

KD CAMPUS

**KD JOB
UPDATES**

Your Gateway to Government Jobs Success

PREPARE FOR GOVERNMENT JOBS

**KD JOB
UPDATES**

**JOIN
KD
CAMPUS**



STENOGRAPHER 2025

ALL QUESTION PAPERS

Table of Contents

Shift_01 Click Here	2
Shift_02 Click Here	48
Shift_03 Click Here	95
Shift_04 Click Here	150
Shift_05 Click Here	197
Shift_06 Click Here	245
Shift_07 Click Here	308
Shift_08 Click Here	355
Shift_09 Click Here	402

KD Job Updates



SSC ONLINE EXAMINATION

CANDIDATE RESPONSE SHEET/GRIEVANCE SYSTEM

[View Your Responses](#)
[Click Here Grievance About Question](#)
[Click Here View Grievance Questions](#)

Admin loggedin. [[Logout](#)]

Exam Name : Steno Grade C and D ▼

Test Date : 06 Aug 2025

Test Time : 09:00 AM

Centre : DLNEW231_BRIGHT INFOTECH SERVICES_100107

Correct Option selected Wrong Option selected Correct Option Not Answered

PART - A (General Intelligence & Reasoning).

Q.No: 1 All flowers are plants. Some plants are flowering plants. Which conclusion is logically valid?

सभी फूल पौधे हैं। कुछ पौधे फूलदार पौधे हैं। कौन सा निष्कर्ष तार्किक रूप से मान्य है?

No plants are flowers

कोई पौधा फूल नहीं है

Some flowers are not plants

कुछ फूल पौधे नहीं हैं

Some plants are flowers

कुछ पौधे फूल हैं

All plants are flowers

सभी पौधे फूल हैं

Q.No: 2 In a race of 40 runners, if Anu is placed 15th, how many runners are ahead of her?

40 धावकों की एक दौड़ में, यदि अनु 15वें स्थान पर है, तो उससे आगे कितने धावक हैं?

14

14

15

15

16

16

13

13

Q.No: 3 In each of the following questions, a word is transformed into another word by applying a specific alphabetical pattern to each of its letters. Identify the logic used in the first pair and apply the same logic to the second word to determine the correct answer.

DREAM : GRDBM :: MAGIC : ?

निम्नलिखित प्रत्येक प्रश्न में, एक शब्द को उसके प्रत्येक अक्षर पर एक विशिष्ट वर्णमाला पैटर्न लागू करके दूसरे शब्द में बदला गया है। पहले जोड़े में प्रयुक्त तर्क को पहचानिए और सही उत्तर निर्धारित करने के लिए उसी तर्क को दूसरे शब्द पर लागू कीजिए।

DREAM : GRDBM :: MAGIC : ?

ULOOL

ULOOL

ZEENE

ZEENE

PATJC

PATJC

TEEPO

TEEPO

Q.No: 4	<p>Input: 42 kite 93 balloon 37 lemon orange 64 Step I: 93 kite 42 balloon 37 lemon orange 64 Step II: 93 balloon kite 42 37 lemon orange 64 Step III: 93 balloon 64 kite 42 37 lemon orange Step IV: 93 balloon 64 lemon kite 42 37 orange Step V: 93 balloon 64 lemon 42 kite 37 orange Step VI: 93 balloon 64 lemon 42 orange kite 37 Question: What is the logic behind the arrangement?</p> <p>इनपुट: 42 पतंग 93 गुब्बारा 37 नींबू नारंगी 64 चरण I: 93 पतंग 42 गुब्बारा 37 नींबू नारंगी 64 चरण II: 93 गुब्बारा पतंग 42 37 नींबू नारंगी 64 चरण III: 93 गुब्बारा 64 पतंग 42 37 नींबू नारंगी चरण IV: 93 गुब्बारा 64 नींबू पतंग 42 37 नारंगी चरण V: 93 गुब्बारा 64 नींबू 42 पतंग 37 नारंगी चरण VI: 93 गुब्बारा 64 नींबू 42 नारंगी पतंग 37 प्रश्न: व्यवस्था के पीछे तर्क क्या है?</p>
	Largest number to front, then alternate word/number shifts
	सबसे बड़ी संख्या आगे, फिर वैकल्पिक शब्द/संख्या स्थानांतरित
	Words alphabetically left, numbers descending right
	शब्द वर्णानुक्रम में बायीं ओर, संख्याएं घटते हुए दायीं ओर
	Numbers and words arranged alternately by rank
	संख्याएं और शब्द क्रमानुसार वैकल्पिक रूप से व्यवस्थित किए गए
	Numbers descending left; words in reverse alphabetical order right
	बाईं ओर अवरोही क्रम में संख्याएं; दाईं ओर उल्टे वर्णमाला क्रम में शब्द
	Not Answered

Q.No: 5	<p>If 3 men and 2 women are seated in a row, how many seating arrangements are possible such that no woman is seated next to another woman?</p> <p>यदि 3 पुरुष और 2 महिलाएं एक पंक्ति में बैठे हैं, तो कितनी बैठने की व्यवस्था संभव है कि कोई भी महिला किसी अन्य महिला के बगल में न बैठे?</p>
	12
	12
	48
	48
	36
	36
	72
	72
	Not Answered

Q.No: 6	<p>Identify the missing number in the series.</p> <p>1, 1, 2, 3, 5, 8, 13, ?</p> <p>श्रृंखला में लुप्त संख्या पहचानें।</p> <p>1, 1, 2, 3, 5, 8, 13, ?</p>
	22
	22
	21
	21
	20
	20
	24
	24

Q.No: 7	<p>In a certain code, 'A + B' means A is the mother of B, 'A × B' means A is the father of B, 'A - B' means A is the sister of B, What does P × Q - R mean?</p> <p>एक निश्चित कोड में, 'A + B' का अर्थ है A, B की माँ है, 'A × B' का अर्थ है A, B का पिता है, 'A - B' का अर्थ है A, B की बहन है, P × Q - R का क्या अर्थ है?</p>
	P is the father of Q and Q is the sister of R

P, Q का पिता है और Q, R की बहन है

Q is the sister of R and Q is the sister of R

Q, R की बहन है और Q, R की बहन है

P is the father of R and Q is the sister of R

P, R का पिता है और Q, R की बहन है

P is the brother of R and Q is the sister of R

P, R का भाई है और Q, R की बहन है

Q.No: 8 Four friends X, Y, Z, and W each have some marbles. X gives Y as many marbles as he already has, gives Z twice the amount of marbles Z already has, and gives W thrice the amount of marbles W already has. Then, W gives $\frac{1}{6}$ th of his marbles to Y. Afterward, X gives 10% of the marbles he now owns to Z and 20% to Y. Finally, all of them have 50 marbles each. What was the original number of marbles each friend had?

चार दोस्तों X, Y, Z और W में से प्रत्येक के पास कुछ मार्बल हैं। X, Y को उतने ही मार्बल देता है जितने उसके पास पहले से हैं, Z को Z के पास पहले से मौजूद मार्बल की संख्या का दुगुना देता है और W को W के पास पहले से मौजूद मार्बल की संख्या का तिगुना देता है। फिर, W अपने मार्बल का $\frac{1}{6}$ भाग Y को देता है। उसके बाद, X अपने पास मौजूद मार्बल का 10% Z को और 20% Y को देता है। अंत में, उन सभी के पास 50-50 मार्बल होते हैं। प्रत्येक मित्र के पास मूल रूप से कितने मार्बल थे?

X - 100, Y - 15, Z - 15, W - 10

X - 100, Y - 15, Z - 15, W - 10

X - 110, Y - 10, Z - 10, W - 8

X - 110, Y - 10, Z - 10, W - 8

X - 90, Y - 40, Z - 20, W - 30

X - 90, Y - 40, Z - 20, W - 30

X - 120, Y - 30, Z - 30, W - 20 -

X - 120, Y - 30, Z - 30, W - 20 -

Not Answered

Q.No: 9 Compare the following two addresses.

Address 1: Ms. Neha Verma, Flat No. 204, Tower B, Green Acres, Pune - 411045

Address 2: Mrs. Neha Verma, Flat No. 204, Tower B, Green Acres Society, Pune - 411045

Are these likely to be the same?

निम्नलिखित दो पत्तों की तुलना करें।

पता 1: सुश्री नेहा वर्मा, फ्लैट नंबर 204, टॉवर बी, ग्रीन एकर्स, पुणे - 411045

पता 2: श्रीमती नेहा वर्मा, फ्लैट नंबर 204, टॉवर बी, ग्रीन एकर्स सोसाइटी, पुणे - 411045

क्या ये एक ही हैं?

No, city codes do not match

नहीं, शहर कोड मेल नहीं खाते

Yes, all major details match

हां, सभी प्रमुख विवरण मेल खाते हैं

No, the flat numbers are different

नहीं, फ्लैट नंबर अलग हैं

No, the name titles are different

नहीं, नाम के शीर्षक अलग हैं

Q.No: 10 Choose the missing number in the below series.

100, 95, 90, 85, ?, 75

नीचे दी गई श्रृंखला में लुप्त संख्या चुनें।

100, 95, 90, 85, ?, 75

80

80

78

78

82

82

85

85

Q.No: 11	<p>A person is facing north. He walks 30 meters and turns to his right, walking 20 meters. Then, he turns to his left and walks 30 meters. Which direction is he facing now?</p> <p>एक व्यक्ति उत्तर दिशा की ओर मुंह करके खड़ा है। वह 30 मीटर चलता है और अपने दाएं मुड़कर 20 मीटर चलता है। फिर, वह अपने बाएं मुड़कर 30 मीटर चलता है। अब वह किस दिशा की ओर मुंह करके खड़ा है?</p>
South	
दक्षिण	
West	
पश्चिम	
East	
पूर्व	
North	
उत्तर	

Q.No: 12	<p>Four of the following five are alike in a certain way and hence form a group. Which is the one that does not belong to that group?</p> <p>A. BRIGHT : DSJHF B. CUSTOM : FVUUP C. FLIGHT : HNIJI D. CHANCE : EKBMF E. STRONG : VUQPR</p> <p>निम्नलिखित पाँच में से चार एक निश्चित रूप से एक जैसे हैं और इसलिए एक समूह बनाते हैं। वह कौन सा है जो उस समूह से संबंधित नहीं है?</p> <p>A. BRIGHT : DSJHF B. CUSTOM : FVUUP C. FLIGHT : HNIJI D. CHANCE : EKBMF E. STRONG : VUQPR</p>
STRONG : VUQPR	
STRONG : VUQPR	
FLIGHT : HNIJI	
FLIGHT : HNIJI	
CUSTOM : FVUUP	
CUSTOM : FVUUP	
BRIGHT : DSJHF	
BRIGHT : DSJHF	
Not Answered	

Q.No: 13	<p>Sahil completed B.Sc. with 66% and M.Sc. with 60%. He has 1 year teaching experience and is 24 years old. What should be the action?</p> <p>साहिल ने बीएससी 66% और एमएससी 60% अंकों के साथ पूरी की है। उसे 1 साल का शिक्षण अनुभव है और उसकी उम्र 24 साल है। क्या कार्रवाई होनी चाहिए?</p>
Refer to Principal	
प्रिंसिपल से संपर्क करें	
Select directly	
सीधे चयन करें	
Reject due to low experience	
कम अनुभव के कारण अस्वीकार	
Keep pending for verification	
सत्यापन हेतु लंबित रखें	
Not Answered	

Q.No: 14	<p>How many ways can 4 people be seated in a circle if two people must sit next to each other?</p> <p>यदि दो व्यक्ति एक दूसरे के बगल में बैठें तो 4 व्यक्तियों को एक वृत्त में कितने तरीकों से बैठाया जा सकता है?</p>
8	
8	
6	
6	
10	

10

4

4

Not Answered

Q.No: 15 Input: Box 53 21 Mobile 86 Tiger Fan 39
Question: What will be the Step II of the arrangement?

इनपुट: बॉक्स 53 21 मोबाइल 86 टाइगर फैन 39
प्रश्न: व्यवस्था का चरण II क्या होगा?

86 21 Box Mobile Tiger Fan 39 53

86 21 बॉक्स मोबाइल टाइगर फैन 39 53

86 Box Mobile 53 Tiger Fan 39 21

86 बॉक्स मोबाइल 53 टाइगर फैन 39 21

86 Mobile Box 53 Tiger Fan 39 21

86 मोबाइल बॉक्स 53 टाइगर फैन 39 21

86 Box 53 Mobile Tiger Fan 39 21

86 बॉक्स 53 मोबाइल टाइगर फैन 39 21

Q.No: 16 If you are facing east and move 10 meters, then turn to your left and move 5 meters. Which direction are you facing now?

यदि आप पूर्व की ओर मुंह करके खड़े हैं और 10 मीटर आगे बढ़ते हैं, तो अपनी बाईं ओर मुड़ें और 5 मीटर आगे बढ़ें। अब आप किस दिशा की ओर मुंह करके खड़े हैं?

West

पश्चिम

North

उत्तर

South

दक्षिण

East

पूर्व

Q.No: 17 Among five persons — P, Q, R, S, and T:
P is taller than only T.
Q is taller than P but shorter than R.
S is the tallest.
Who is the shortest?

पाँच व्यक्तियों - P, Q, R, S, और T में से:
P केवल T से लंबा है।
Q, P से लंबा है लेकिन R से छोटा है।
S सबसे लंबा है।
सबसे छोटा कौन है?

S

S

II

II

Q

Q

R

R

Q.No: 18 In a 50 L mixture milk to water ratio is 3:2. How much water must be added to make the ratio 1:1?

50 लीटर के मिश्रण में दूध और पानी का अनुपात 3:2 है। अनुपात 1:1 करने के लिए कितना पानी मिलाना होगा?

15 L

15 लीटर

20 L

20 लीटर

12 L
12 लीटर
10 L
10 लीटर

Q.No: 19	Which figure breaks the pattern? <div> <div>□□■□□■□□■□</div> <div> <div>□□■□□■□□■□</div> <div>कौन सी आकृति पैटर्न को तोड़ती है?</div> <div>□□■□□■□□■□</div> </div> </div>
3 rd ■	
3 rd ■	
6 th ■	
6 th ■	
9 th ■	
9 th ■	
11 th ■	
11 th ■	

Q.No: 20	If X is the father of Y and Y is the mother of Z, then how is X related to Z? यदि X, Y का पिता है और Y, Z की माता है, तो X का Z से क्या संबंध है?
Father-in-law	
ससुर	
Uncle	
चाचा	
Grandfather	
दादा	
Brother-in-law	
साला	

Q.No: 21	Sandeep was given some money by his father. He spent all of it in six shops. In each shop, he spent one rupee more than half of what he had when he entered. How much money did Sandeep receive from his father? संदीप को उसके पिता ने कुछ पैसे दिए थे। उसने ये सारे पैसे छह दुकानों में खर्च कर दिए। हर दुकान में उसने अपनी आधी से एक रुपया ज़्यादा खर्च किया। संदीप को अपने पिता से कितने पैसे मिले?
127 rupees	
127 रुपए	
15 rupees	
15 रुपए	
31 rupees	
31 रुपए	
63 rupees	
63 रुपए	
Not Answered	

Q.No: 22	In a class of 45 students, Rahul is ranked 20th from the top. If the students are arranged in the descending order of ranks, what will be Rahul's position from the bottom? 45 छात्रों की एक कक्षा में, राहुल शीर्ष से 20वें स्थान पर है। यदि छात्रों को अवरोही क्रम में व्यवस्थित किया जाए, तो नीचे से राहुल का स्थान क्या होगा?
26th	
26 वें	
23rd	
23 वें	
24th	
24 वें	
25th	

Q.No: 23 If in a certain code, SUN is written as 54, and MOON is written as 57, how is STAR written?
अगर किसी निश्चित कोड में SUN को 54 तथा MOON को 57 लिखा जाता है, तो STAR को किस प्रकार लिखा जाएगा?

64
64
58
58
57
57
75
75

Q.No: 24 If $5\#3=8$ and $7\#2=9$, then what is the value of $9\#4$?
अगर $5\#3=8$ और $7\#2=9$, तो $9\#4$ का मान क्या है?

36
36
12
12
12
5
5

Q.No: 25 Find the number that doesn't belong:
वह संख्या ज्ञात करें जो इस सूची में नहीं है:

11, 13, 17, 19
11, 13, 17, 19
37, 41, 43, 47
37, 41, 43, 47
23, 29, 31, 33
23, 29, 31, 33
2, 3, 5, 7
2, 3, 5, 7

Q.No: 26 Complete this series: 131, 137, 149, 163, 181, ?
इस श्रृंखला को पूरा करें: 131, 137, 149, 163, 181, ?

211
211
193
193
191
191
197
197

Not Answered

Q.No: 27 Which of the following actions shows the best judgment in a social situation?
निम्नलिखित में से कौन सी क्रिया सामाजिक परिस्थिति में सर्वोत्तम निर्णय दर्शाती है?

Offering help to an elderly person carrying heavy bags

भारी बैग ले जा रहे एक बुजुर्ग व्यक्ति की मदद करना

Yelling at someone who bumped into you

किसी ऐसे व्यक्ति पर चिल्लाना जो आपसे टकरा गया हो

Posting negative comments online anonymously

गुमनाम रूप से ऑनलाइन नकारात्मक टिप्पणियाँ पोस्ट करना

Ignoring a crying child in a public place

सार्वजनिक स्थान पर रोते हुए बच्चे को नज़रअंदाज़ करना

Q.No: 28 A is to C as E is to:
A, C से उसी प्रकार संबंधित है जिस प्रकार E:

I
I
H
H
E
E
F
F

Q.No: 29 Find the next term in the given series. B, DE, HJK, ?, WXYZB
दी गई श्रृंखला में अगला पद ज्ञात कीजिए। B, DE, HJK, ?, WXYZB

S37T
S37T
R74A
R74A
OPQR
OPQR
T89Z
T89Z

Not Answered

Q.No: 30 If A is the mother of B, and B is the father of C, then how is A related to C?
यदि A, B की माता है और B, C का पिता है, तो A का C से क्या संबंध है?

Sister
बहन
Grandmother
दादी
Mother
माँ
Aunt
चाची

Q.No: 31 A boat travels 40 km upstream in 4 hours and downstream in 2 hours. What is the speed of the stream?
एक नाव धारा के प्रतिकूल 40 किमी की दूरी 4 घंटे में और धारा के अनुकूल 2 घंटे में तय करती है। धारा की गति क्या है?

3 km/h
3 किमी/घंटा
4 km/h
4 किमी/घंटा
6 km/h
6 किमी/घंटा
5 km/h
5 किमी/घंटा

Not Answered

Q.No: 32 Find the next term in the given series. K1F, M3E, O8D, Q19C, ?
दी गई श्रृंखला में अगला पद ज्ञात कीजिए। K1F, M3E, O8D, Q19C, ?

S37C

S37C

S42B

S42B

S47B

S47B

T42A

T42A

Q.No: 33	Statements: 1. All books are papers. 2. All papers are trees. Conclusions: I. All books are trees. II. Some trees are books कथन: 1. सभी किताबें कागज़ हैं। 2. सभी कागज़ पेड़ हैं। निष्कर्ष: I. सभी किताबें पेड़ हैं। II. कुछ पेड़ किताबें हैं
Only II follows	
केवल II अनुसरण करता है	
Only I follows	
केवल I अनुसरण करता है	
Both I and II follow	
I और II दोनों अनुसरण करते हैं	
Neither I nor II follows	
न तो I और न ही II अनुसरण करता है	

Q.No: 34	Nishant has 68% B.Sc., pending M.Sc. result, 3 years teaching experience, 27 years old, willing for probation. What to do? निशांत के पास 68% बीएससी है, एम.एससी. का रिजल्ट आना बाकी है, 3 साल का शिक्षण अनुभव है, 27 साल का है, प्रोबेशन के लिए तैयार है। क्या करें?
Wait for result then decide	
परिणाम का इंतज़ार करें फिर निर्णय लें	
Reject due to incomplete PG	
अपूर्ण पीजी के कारण अस्वीकृत	
Refer to Principal	
प्रिंसिपल से संपर्क करें	
Select Nishant	
निशांत का चयन करें	
Not Answered	

Q.No: 35	If "A" is coded as 2, "B" as 4, "a" as 11, "b" as 12 (following a pattern for capitals and small letters), what is the code for "Hi"? अगर "A" को 2, "B" को 4, "a" को 11, "b" को 12 (बड़े और छोटे अक्षरों के पैटर्न का अनुसरण करते हुए) के रूप में कोड किया जाता है, तो "Hi" के लिए कोड क्या होगा?
17, 20	
17, 20	
19, 22	
19, 22	
18, 21	
18, 21	
16, 19	
16, 19	

Q.No: 36	A man walks 10 meters south, then turns left and walks 15 meters. In which direction is he now from his starting point?
----------	---

	एक आदमी 10 मीटर दक्षिण की ओर चलता है, फिर बाएं मुड़ता है और 15 मीटर चलता है। अब वह अपने प्रारंभिक बिंदु से किस दिशा में है?
North	
उत्तर	
East	
पूर्व	
South	
दक्षिण	
West	
पश्चिम	

Q.No: 37	In a row of 8 seats, how many ways can 3 people sit next to each other? 8 सीटों की एक पंक्ति में, 3 लोग एक दूसरे के बगल में कितने तरीकों से बैठ सकते हैं?
48	
48	
36	
36	
54	
54	
72	
72	
Not Answered	

Q.No: 38	In how many ways can 5 people be seated in a row such that A and B are not next to each other? 5 व्यक्तियों को एक पंक्ति में कितने तरीकों से बैठाया जा सकता है कि A और B एक दूसरे के बगल में न हों?
36	
36	
54	
54	
72	
72	
48	
48	
Not Answered	

Q.No: 39	Select the correct option that will complete the series. (2, 7), (3, 13), (5, 31), ?, (11, 133) वह सही विकल्प चुनिए जो श्रृंखला को पूरा करेगा। (2, 7), (3, 13), (5, 31), ?, (11, 133)
(10, 101)	
(10, 101)	
(8, 76)	
(8, 76)	
(7, 57)	
(7, 57)	
(9, 91)	
(9, 91)	

Q.No: 40	A coding rule is followed by Roll numbers ending with an even digit belong to Batch 1 and Roll numbers ending with an odd digit belong to Batch 2. Identify the roll number for Batch 1 and Batch 2. कोडिंग नियम के अनुसार सम अंक पर समाप्त होने वाले रोल नंबर बैच 1 के हैं और विषम अंक पर समाप्त होने वाले रोल नंबर बैच 2 के हैं। बैच 1 और बैच 2 के रोल नंबर की पहचान करें।
D1400 and C3882	
D1400 और C3882	

E2894 and F3917

E2894 और F3917

A3841 and B4537

A3841 और B4537

G8763 and F4711

G8763 और F4711

Q.No: 41 All men are mortal. Socrates is a man. Which of the following is true?

सभी मनुष्य नश्वर हैं। सुकरात एक मनुष्य है। निम्नलिखित में से कौन सा कथन सत्य है?

Socrates is not mortal

सुकरात नश्वर नहीं है

Socrates is immortal

सुकरात अमर है

Socrates is a god

सुकरात एक देवता है

Socrates is mortal

सुकरात नश्वर है

Q.No: 42 All birds can fly. Some birds cannot fly. Which of the following conclusions is correct?

ए और बी ने 3:2 के अनुपात में निवेश किया। बी को ₹800 का फायदा हुआ। कुल लाभ कितना है?

All birds can swim

सभी पक्षी तैर सकते हैं

Some birds are fish

कुछ पक्षी मछली हैं

Some birds cannot fly

कुछ पक्षी उड़ नहीं सकते

All birds are animals

सभी पक्षी जानवर हैं

Not Answered

Q.No: 43 Select the correct option that will complete the series. (2, 3), (5, 24), (8, 63), ?, (14, 195)

वह सही विकल्प चुनिए जो श्रृंखला को पूरा करेगा। (2, 3), (5, 24), (8, 63), ?, (14, 195)

(9, 95)

(9, 95)

(10, 57)

(10, 57)

(11, 120)

(11, 120)

(12, 136)

(12, 136)

Q.No: 44 Find the missing term in the following series.

ACE, BDF, CEH, DGI, ?

निम्नलिखित श्रृंखला में लुप्त पद ज्ञात कीजिए।

ACE, BDF, CEH, DGI, ?

EIK

EIK

EGI

EGI

EIM

EIM

EHL
EHL
Not Answered

Q.No: 45	D is to H as J is to: D, H के समान है, जैसे J, _ के समान है:
L	
L	
O	
O	
M	
M	
N	
N	

Q.No: 46	If in a certain code language, "TRIP" is written as "USJQ", how will "JUMP" be written in the same code? अगर किसी निश्चित कोड भाषा में, "TRIP" को "USJQ" लिखा जाता है, तो उसी कोड भाषा में "JUMP" को किस प्रकार लिखा जाएगा?
KVNO	
KVNO	
KVOQ	
KVOQ	
KUNQ	
KUNQ	
KVMQ	
KVMQ	

Q.No: 47	<p>Input: cat 90 24 tree 48 75 flower bush</p> <p>Step I: 90 cat 24 tree 48 75 flower bush</p> <p>Step II: 90 bush cat 24 tree 48 75 flower</p> <p>Step III: 90 bush 75 cat 24 tree 48 flower</p> <p>Step IV: 90 bush 75 cat flower 24 tree 48</p> <p>Step V: 90 bush 75 cat flower 48 24 tree</p> <p>Question: What is the logic behind the arrangement?</p> <p>इनपुट: बिल्ली 90 24 पेड़ 48 75 फूल झाड़ी</p> <p>चरण I: 90 बिल्ली 24 पेड़ 48 75 फूल झाड़ी</p> <p>चरण II: 90 झाड़ी बिल्ली 24 पेड़ 48 75 फूल</p> <p>चरण III: 90 झाड़ी 75 बिल्ली 24 पेड़ 48 फूल</p> <p>चरण IV: 90 झाड़ी 75 बिल्ली फूल 24 पेड़ 48</p> <p>चरण V: 90 झाड़ी 75 बिल्ली फूल 48 24 पेड़</p> <p>प्रश्न: व्यवस्था के पीछे तर्क क्या है?</p>
Step III	
चरण III	
Step II	
चरण II	
Step V	
चरण V	
Step IV	
चरण IV	
Not Answered	

Q.No: 48	<p>If + means -, ÷ means +, - means ×, and × means ÷ then, what is $18 \div 6 - 2 + 8$?</p> <p>यदि + का अर्थ - है, ÷ का अर्थ + है, - का अर्थ × है, और × का अर्थ ÷ है, तो $18 \div 6 - 2 + 8$ क्या है?</p>
24	
24	
26	
26	
28	

Q.No: 49 Choose the number that is different from the others.

वह संख्या चुनें जो अन्य से भिन्न है।

64

64

49

49

32

32

48

48

Q.No: 50 In each of the following questions, a specific relationship is given between two words. Identify the word that shares a similar semantic relationship with the given pair. Choose the most appropriate option from the four choices given below.

Knife : Cut :: Pen : ?

निम्नलिखित प्रत्येक प्रश्न में दो शब्दों के बीच एक विशिष्ट संबंध दिया गया है। उस शब्द की पहचान कीजिए जो दिए गए युग्म के साथ समान अर्थ संबंध साझा करता है। नीचे दिए गए चार विकल्पों में से सबसे उपयुक्त विकल्प चुनिए।

चाकू : काटना :: कलम : ?

Ink

आईएनके

Scribble

घसीटना

Write

लिखना

Paper

कागज़

PART - B (General Awareness)

Q.No: 51 Consider the below statements regarding the Aditya-L1 mission and its payloads:

1. The SUIT payload on Aditya-L1 is designed to image the solar disk in the near-ultraviolet (UV) spectrum to study the temperature and chemical composition of the Sun's photosphere and chromosphere.

2. The SoLEXS instrument is a high-resolution X-ray spectrometer used to study solar flares and active regions in soft X-ray wavelengths.

Which of the above statements is/are correct?

आदित्य-एल1 मिशन और उसके पेलोड के बारे में नीचे दिए गए कथनों पर विचार करें:

1. आदित्य-एल1 पर SUIT पेलोड को सूर्य के फोटोस्फीयर और क्रोमोस्फीयर के तापमान और रासायनिक संरचना का अध्ययन करने के लिए निकट-पराबैंगनी (UV) स्पेक्ट्रम में सौर डिस्क की छवि बनाने के लिए डिज़ाइन किया गया है।

2. SoLEXS उपकरण एक उच्च-रिज़ॉल्यूशन एक्स-रे स्पेक्ट्रोमीटर है जिसका उपयोग नरम एक्स-रे तरंग दैर्ध्य में सौर फ्लेयर्स और सक्रिय क्षेत्रों का अध्ययन करने के लिए किया जाता है।

उपर्युक्त कथनों में से कौन सा सही है / हैं?

Both 1 and 2

1 और 2 दोनों

Neither 1 nor 2

न तो 1, न ही 2

2 only

2 केवल

1 only

1 केवल

Q.No: 52 The primary objective of the LUPEX Mission, a collaboration between ISRO and JAXA, is to:

इसरो और जाक्सा के बीच सहयोग से संचालित लूपेक्स मिशन का प्राथमिक उद्देश्य है:

Study the Martian atmosphere and soil composition

मंगल ग्रह के वायुमंडल और मिट्टी की संरचना का अध्ययन करें

Deploy a communication satellite in lunar orbit

चन्द्रमा की कक्षा में संचार उपग्रह तैनात करना

Investigate the quantity and quality of water on the Moon and explore its dark side

चंद्रमा पर पानी की मात्रा और गुणवत्ता की जांच करें और इसके अंधेरे पक्ष का पता लगाएं

Observe solar flares and coronal mass ejections

सौर ज्वालाओं और कोरोनल मास इजेक्शन का अवलोकन करें

Not Answered

Q.No: 53 Read the following statements:

Statement 1: The process of vertical heating of the atmosphere is known as advection.

Statement 2: The transfer of heat through horizontal movement of air is called convection.

Statement 3: 'Loo' winds in northern India during summer are caused by advection.

Which of the above statements is/are correct?

निम्नलिखित कथनों को पढ़ें:

कथन 1: वायुमंडल के ऊर्ध्वाधर तापन की प्रक्रिया को संवहन के रूप में जाना जाता है।

कथन 2: हवा की क्षैतिज गति के माध्यम से ऊष्मा के स्थानांतरण को संवहन कहा जाता है।

कथन 3: गर्मियों के दौरान उत्तरी भारत में 'लू' हवाएँ संवहन के कारण होती हैं।

उपर्युक्त कथनों में से कौन सा/से सही है/हैं?

All three statements 1,2 and 3 are correct

सभी तीन कथन 1,2 और 3 सही हैं

Statements 2 and 3 are correct

कथन 2 और 3 सही हैं

Only Statements 1 and 2 are correct

केवल कथन 1 और 2 सही हैं

Only Statement 3 is correct

केवल कथन 3 सही है

Not Answered

Q.No: 54 Which property of sound determines its loudness?

ध्वनि का कौन-सा गुण उसकी तीव्रता (लाउडनेस) को निर्धारित करता है?

Wavelength

तरंगदैर्घ्य

Pitch

स्वर ऊँचाई (पिच)

Amplitude

आयाम (ऐम्प्लिट्यूड)

Frequency

आवृत्ति

Q.No: 55 Which of the following is a subject under the State List?

निम्नलिखित में से कौन-सा विषय राज्य सूची के अंतर्गत आता है?

Banking

बैंकिंग

Public Order

सार्वजनिक व्यवस्था

Defence

रक्षा

Education

शिक्षा

Q.No: 56 Who was appointed as the CEO (Chief Executive Officer) of NITI Aayog in February 2023?

फरवरी 2023 में नीति आयोग के सीईओ (मुख्य कार्यकारी अधिकारी) के रूप में किसे नियुक्त किया गया?

Dr. Sukhbir Singh Sandhu

डॉ. सुखबीर सिंह संधू

Amitabh Kant

अमिताभ कांत

Dr. Vivek Joshi

डॉ विवेक जोशी

BVR Subrahmanyam

बी.वी.आर. सुब्रह्मण्यम

Q.No: 57 How does Article 356 impact the federal structure of India?
अनुच्छेद 356 भारत की संघीय संरचना को किस प्रकार प्रभावित करता है?

It ensures judicial independence

यह न्यायपालिका की स्वतंत्रता को सुनिश्चित करता है

It promotes decentralization

यह विकेंद्रीकरण को बढ़ावा देता है

It allows Centre to dismiss State governments

यह केंद्र को राज्य सरकारों को बर्खास्त करने की अनुमति देता है

It enforces cooperative federalism

यह सहकारी संघवाद को लागू करता है

Not Answered

Q.No: 58 Which of the following is not a correct statement regarding vacuoles?
रिक्तिकाओं के संबंध में निम्नलिखित में से कौन सा कथन सही नहीं है?

Vacuoles are generally larger in animal cells than in plant cells.

सामान्यतः पशु कोशिकाओं में रिक्तिकाएं पादप कोशिकाओं की तुलना में बड़ी होती हैं।

Animal cells usually contain smaller vacuoles compared to plant cells

पशु कोशिकाओं में आमतौर पर पौधों की कोशिकाओं की तुलना में छोटे रिक्तिकाएं होती हैं

In some plant cells, the central vacuole can take up most of the cell's volume

कुछ पौधों की कोशिकाओं में, केंद्रीय रिक्तिका कोशिका के अधिकांश आयतन को घेर सकती है

Vacuoles serve as storage sacs for both solids and liquids

रिक्तिकाएं ठोस और तरल दोनों के लिए भंडारण थैलियों के रूप में काम करती हैं

Q.No: 59 Which platform is used for submitting ideas under the INSPIRE MANAK Scheme?
INSPIRE MANAK योजना के तहत विचार प्रस्तुत करने के लिए कौन सा मंच प्रयोग किया जाता है?

Science and Technology Portal

विज्ञान और प्रौद्योगिकी पोर्टल

INSPIRE Portal

INSPIRE पोर्टल

National Innovation Portal

राष्ट्रीय नवाचार पोर्टल

Digital India Portal

डिजिटल इंडिया पोर्टल

Not Answered

Q.No: 60 Which of the following is the main reason that Prime Minister Narendra Modi meet Mr. Michal Spiczko, President of the Kabaddi Federation of Poland?
निम्नलिखित में से कौन सा मुख्य कारण है कि प्रधान मंत्री नरेंद्र मोदी ने पोलैंड के कबड्डी महासंघ के अध्यक्ष श्री मिशल स्पिज़को से मुलाकात की?

To congratulate him on Poland's football achievements

पोलैंड की फुटबॉल उपलब्धियों पर उन्हें बधाई देने के लिए

To appreciate his efforts in promoting Kabaddi in Europe

यूरोप में कबड्डी को बढ़ावा देने के उनके प्रयासों की सराहना करना

To sign a trade agreement between India and Poland

भारत और पोलैंड के बीच व्यापार समझौते पर हस्ताक्षर

To discuss military cooperation through sports

खेल के माध्यम से सैन्य सहयोग पर चर्चा करना

Q.No: 61 Which city is home to the cricket ground, Wankhede Stadium?

वानखेड़े स्टेडियम क्रिकेट मैदान किस शहर में है?

Chennai

चेन्नई

Mumbai

मुंबई

Kolkata

कोलकाता

Delhi

दिल्ली

Q.No: 62 The Vice-President of India is part of which branch of the government?

भारत का उपराष्ट्रपति सरकार की किस शाखा का हिस्सा है?

Legislative only

केवल विधायी

Executive only

केवल कार्यकारी

Judicial only

केवल न्यायिक

Both Executive and Legislative

कार्यपालिका और विधायी दोनों

Q.No: 63 Which of the following is the specific port facility within Chabahar Port that India is primarily developing and operating?

चाबहार बंदरगाह के अंतर्गत निम्नलिखित में से कौन सी विशिष्ट बंदरगाह सुविधा है जिसे भारत मुख्य रूप से विकसित और संचालित कर रहा है?

Jask Port

जस्क बंदरगाह

Shahid Beheshti Port

शहिद बेहेश्ती बंदरगाह

Shahid Kalantari Port

शहिद कलंतरी बंदरगाह

Bandar Abbas Port

बंदर अब्बास बंदरगाह

Not Answered

Q.No: 64 Consider the following statements:

1. Madhabi Puri Buch became the first woman to head SEBI in March 2022.
 2. Tuhin Kanta Pandey has been appointed as the new SEBI Chief for three years from February 28, 2025.
 3. Saudi Arabia has awarded PM Narendra Modi the Order of Mubarak Al-Kabeer.
- Which of the above statement(s) is/are correct?

निम्नलिखित कथनों पर विचार करें:

1. माधबी पुरी बुच मार्च 2022 में सेबी की प्रमुख बनने वाली पहली महिला बनीं।
 2. तुहिन कान्ता पांडे को 28 फरवरी, 2025 से तीन साल के लिए सेबी का नया प्रमुख नियुक्त किया गया है।
 3. सऊदी अरब ने पीएम नरेंद्र मोदी को ऑर्डर ऑफ मुबारक अल-कबीर से सम्मानित किया है।
- उपर्युक्त कथनों में से कौन सा सही है/हैं?

1 and 3 only

केवल 1 और 3

2 and 3 only

केवल 2 और 3

1, 2, and 3 all are correct

1, 2, और 3 सभी सही हैं

1 and 2 only

केवल 1 और 2

Not Answered

Q.No: 65 Name the Indian port that is the largest exporter of iron ore?

वह भारतीय बंदरगाह कौन-सा है जो लौह अयस्क (आयरन ओर) का सबसे बड़ा निर्यातक है?

Paradip Port

पारादीप बंदरगाह

Chennai Port

चेन्नई बंदरगाह

Visakhapatnam Port

विशाखापत्तनम बंदरगाह

Marmagao Port

मार्मागाओ बंदरगाह

Q.No: 66 What is the name of the writer of Tomb of Sand, the first Hindi book to be awarded the International Booker Prize?

अंतर्राष्ट्रीय बुकर पुरस्कार से सम्मानित पहली हिंदी पुस्तक 'टॉम्ब ऑफ सैंड' के लेखक का नाम क्या है?

Geetanjali Shree

गीतांजलि श्री

Arundhati Roy

अरुंधति रॉय

Kiran Desai

किरण देसाई

Jhumpa Lahiri

झुम्पा लाहिरी

Q.No: 67 What was the role of the National Dairy Development Board (NDDB) in the Technology Mission on Oilseeds?

तेल बीज प्रौद्योगिकी मिशन में राष्ट्रीय दुग्ध विकास बोर्ड (NDDB) की क्या भूमिका थी?

To promote milk production

दुग्ध उत्पादन को बढ़ावा देना

To regulate trade policies

व्यापार नीतियों का नियमन

To develop genetically modified crops

आनुवंशिक रूप से परिवर्तित फसलों का विकास

To manage oilseed procurement and processing

तिलहन की खरीद और प्रसंस्करण का प्रबंधन

Q.No: 68 Which of the following pairs is **correctly** matched with respect to the Schedules of the Indian Constitution?

निम्नलिखित में से कौन सा युग्म भारतीय संविधान की अनुसूचियों के संबंध में सही सुमेलित है?

Eleventh Schedule – Powers and responsibilities of Panchayats

ग्यारहवीं अनुसूची – पंचायतों की शक्तियां और जिम्मेदारियां

Twelfth Schedule – Election of President and Vice-President

बारहवीं अनुसूची – राष्ट्रपति और उपराष्ट्रपति का चुनाव

Tenth Schedule – Languages recognised by the Constitution

दसवीं अनुसूची – संविधान द्वारा मान्यता प्राप्त भाषाएँ

Ninth Schedule – Allocation of powers between Union and States

नौवीं अनुसूची – संघ और राज्यों के बीच शक्तियों का आवंटन

Q.No: 69	Which of the following powers granted under the Criminal Procedure (Identification) Act, 2022 extends beyond the scope of its predecessor, the Identification of Prisoners Act, 1920? अपराधिक प्रक्रिया (पहचान) अधिनियम, 2022 के अंतर्गत कौन-सी शक्ति पूर्ववर्ती "कैदियों की पहचान अधिनियम, 1920" की तुलना में अधिक व्यापक है?
	Permitting collection of biometric and biological data
	जैविक और बायोमेट्रिक डेटा संग्रह की अनुमति देना
	Restricting identification procedures only to convicts
	केवल दोषियों की पहचान प्रक्रिया तक सीमित रखना
	Limiting law enforcement access to stored data
	केवल सीमित कानून प्रवर्तन एजेंसियों को डेटा की पहुँच देना
	Allowing only fingerprints for crime investigation
	अपराध जांच हेतु केवल उंगलियों के निशान को मान्य करना

Q.No: 70	Under which article can the President declare a National Emergency? राष्ट्रपति राष्ट्रीय आपातकाल की घोषणा संविधान के किस अनुच्छेद के अंतर्गत कर सकता है?
	Article 360
	अनुच्छेद 360
	Article 356
	अनुच्छेद 356
	Article 352
	अनुच्छेद 352
	Article 365
	अनुच्छेद 365

Q.No: 71	In which year were the major economic reforms introduced in India? भारत में प्रमुख आर्थिक सुधार किस वर्ष लागू किए गए थे?
	1990
	1990
	1985
	1985
	2000
	2000
	1991
	1991

Q.No: 72	Which architectural style is best described by the following features: ribbed vaults, pointed arches, flying buttresses, and stained-glass windows? निम्नलिखित में से कौन-सी वास्तुशैली इन विशेषताओं से परिभाषित होती है: रिब्ड वॉल्ट, नुकीले मेहराब, फ्लाइंग बट्रेस, और रंगीन कांच की खिड़कियाँ?
	Mughal
	मुगल शैली
	Deccan
	दक्षिण भारत (डेक्कन)
	Indo-Islamic
	भारत-इस्लामी शैली
	Gothic
	गोथिक वास्तुकला
	Not Answered

Q.No: 73	Which of the following statements are correct regarding the Unique Land Parcel Identification Number (ULPIN) system? 1. ULPIN assigns a unique ID to every land parcel in India. 2. ULPIN is a 14-digit identification number. 3. ULPIN helps track land ownership and resolve disputes. 4. ULPIN is only for urban areas and not rural land.
----------	--

विशिष्ट भूमि पार्सल पहचान संख्या (ULPIN) प्रणाली के संबंध में निम्नलिखित में से कौन सा कथन सही है?

1. ULPIN भारत में प्रत्येक भूमि पार्सल को एक विशिष्ट पहचान प्रदान करता है।
2. ULPIN एक 14-अंकीय पहचान संख्या है।
3. ULPIN भूमि स्वामित्व को ट्रैक करने और विवादों को हल करने में मदद करता है।
4. ULPIN केवल शहरी क्षेत्रों के लिए है, ग्रामीण भूमि के लिए नहीं।

1, 2, and 3 only

केवल 1, 2, और 3

1, 2, and 4 only

केवल 1, 2, और 4

2 and 3 only

केवल 2 और 3

1, 3, and 4 only

केवल 1, 3, और 4

Q.No: 74 Which of the following commissions is **NOT** a statutory body in India?

निम्नलिखित में से कौन सा आयोग भारत में एक वैधानिक निकाय नहीं है?

National Commission for Scheduled Tribes

राष्ट्रीय अनुसूचित जनजाति आयोग

National Human Rights Commission

राष्ट्रीय मानवाधिकार आयोग

National Commission for Farmers

राष्ट्रीय किसान आयोग

National Commission for Women

राष्ट्रीय महिला आयोग

Q.No: 75 Which of the following is a key reason for the decline in the agricultural sector in India after 1991 economic reforms?

1991 के आर्थिक सुधारों के बाद भारत में कृषि क्षेत्र में गिरावट का मुख्य कारण निम्नलिखित में से कौन सा है?

Rising minimum support prices for all crops

सभी फसलों के लिए न्यूनतम समर्थन मूल्य में वृद्धि

Greater protection through higher import duties

उच्च आयात शुल्क के माध्यम से अधिक सुरक्षा

Shift toward export-oriented cash crops and reduced public investment

निर्यात-मुख्य नकदी फसलों की ओर रुझान और सार्वजनिक निवेश में कमी

Increased investment in irrigation and rural infrastructure

सिंचाई और ग्रामीण बुनियादी ढांचे में निवेश में वृद्धि

Q.No: 76 What is a major difficulty in the data collection process for the Happiness Index across different countries?

विभिन्न देशों में हैप्पीनेस इंडेक्स हेतु आंकड़े एकत्र करने में प्रमुख कठिनाई क्या है?

Recording trade statistics accurately

व्यापार सांख्यिकी का सटीक रिकॉर्डिंग

Lack of financial resources for advertising

विज्ञापन हेतु वित्तीय संसाधनों की कमी

Language barriers in economic treaties

आर्थिक संधियों में भाषाई बाधाएँ

Ensuring consistent and uniform survey methods globally

वैश्विक स्तर पर सर्वेक्षण की विधियों में समानता और निरंतरता सुनिश्चित करना

Q.No: 77 Which of the following is recognized as a classical dance of India?

निम्नलिखित में से कौन-सा नृत्य भारतीय शास्त्रीय नृत्य के रूप में मान्यता प्राप्त है?

Bharatnatyam

भरतनाट्यम

Garba
गरबा
Lavani
लावणी
Bhangra
भांगड़ा

Q.No: 78	Which Indian state has the highest proportion of its workforce population engaged in agriculture? भारत का वह राज्य कौन-सा है जहाँ सर्वाधिक कार्यशील जनसंख्या कृषि कार्यों में संलग्न है?
Rajasthan	
राजस्थान	
Uttar Pradesh	
उत्तर प्रदेश	
Bihar	
बिहार	
Punjab	
पंजाब	

Q.No: 79	How many key variables are used in the World Happiness Report to explain happiness levels? विश्व प्रसन्नता रिपोर्ट में प्रसन्नता के स्तर को समझाने के लिए कितने प्रमुख चरों का उपयोग किया जाता है?
6	
6	
4	
4	
10	
10	
8	
8	
Not Answered	

Q.No: 80	Given below are the statements in Assertion and Reason. Choose the correct option: Assertion (A): The naming of "Good Friday" as a positive term is universally accepted among Christian scholars and traditions. Reason (R): The day is termed "Good" to signify the positive theological meaning of Jesus's sacrificial death. नीचे कथन और कारण दिए गए हैं। सही विकल्प चुनें: कथन (A): "गुड फ्राइडे" को एक सकारात्मक शब्द के रूप में नामित करना ईसाई विद्वानों और परंपराओं के बीच सार्वभौमिक रूप से स्वीकार किया जाता है। कारण (R): यीशु की बलिदानपूर्ण मृत्यु के सकारात्मक धार्मिक अर्थ को दर्शाने के लिए इस दिन को "गुड" कहा जाता है।
Both A and R are false.	
A और R दोनों गलत हैं।	
Both A and R are true, and R is the correct explanation of A.	
A और R दोनों सत्य हैं, तथा R, A का सही स्पष्टीकरण है।	
Both A and R are true, but R is not the correct explanation of A.	
A और R दोनों सत्य हैं, लेकिन R, A का सही स्पष्टीकरण नहीं है।	
A is false, but R is true.	
A असत्य है, लेकिन R सत्य है।	

Q.No: 81	Which Union Territory has the highest population density as per Census 2011? 2011 की जनगणना के अनुसार, किस केंद्र शासित प्रदेश की जनसंख्या घनत्व सबसे अधिक है?
Chandigarh	
चंडीगढ़	

Puducherry

पुडुचेरी

Lakshadweep

लक्षद्वीप

Delhi

दिल्ली

Q.No: 82 A conductor rod moving with a velocity v perpendicular to a uniform magnetic field B . If the length of the rod perpendicular to both v and B is L , the induced EMF across its ends is given by?
एक चालक छड़ एक समान चुंबकीय क्षेत्र B के लंबवत वेग v के साथ घूम रही है। यदि v और B दोनों के लंबवत छड़ की लंबाई L है, तो इसके सिरो पर प्रेरित EMF किसके द्वारा दिया जाता है?

BL^2v

BL^2v

BLv

BLv

Bv/L

Bv/L

B/vL

B/vL

Not Answered

Q.No: 83 What is the primary goal of the BIMSTEC Free Trade Area (FTA)?

BIMSTEC मुक्त व्यापार क्षेत्र (FTA) का प्रमुख उद्देश्य क्या है?

To reduce trade barriers and enhance economic cooperation

व्यापार बाधाओं को कम करने और आर्थिक सहयोग को प्रोत्साहित करने हेतु

To establish a common currency among BIMSTEC nations

BIMSTEC देशों के लिए एक साझा मुद्रा की स्थापना करना

To regulate trade policies globally

वैश्विक व्यापार नीतियों का विनियमन करने के उद्देश्य से

To promote cultural exchanges

सांस्कृतिक आदान-प्रदान को बढ़ावा देने के उद्देश्य से

Q.No: 84 Which Indian space mission marked the successful launch of 104 satellites in a single mission?

कौन-सा भारतीय अंतरिक्ष मिशन एकल प्रक्षेपण में 104 उपग्रहों को सफलतापूर्वक लॉन्च करने के लिए जाना जाता है?

Astrosat

एस्ट्रोसैट

GSLV Mk III

जीएसएलवी मार्क-III

Chandrayaan-2

चंद्रयान-2

PSLV-C37

पीएसएलवी-सी37

Not Answered

Q.No: 85 The term "deuce" is associated with which sport?

ड्यूस शब्द किस खेल से संबंधित है?

Football

फुटबॉल

Basketball

बास्केटबॉल

Tennis

टेनेस

Q.No: 86 Which scheme was launched to promote entrepreneurship among SC and ST communities?

एससी और एसटी समुदायों के बीच उद्यमशीलता को बढ़ावा देने के लिए कौन सी योजना शुरू की गई?

Start-Up India

स्टार्ट-अप इंडिया

Atmanirbhar Bharat Abhiyan

आत्मनिर्भर भारत अभियान

Stand-Up India

स्टैंड-अप इंडिया

MUDRA Yojana

मुद्रा योजना

Q.No: 87 Match the column with their descriptions:

Column A (Laws)	Column B (Descriptions)
A. Law of Demand	1. After a certain point, increasing input leads to declining marginal product.
B. Law of Diminishing Marginal Product	2. Demand and price move in opposite directions when income increases.
C. Law of Variable Proportions	3. Marginal product initially rises with input usage, then falls.

स्तंभ का उनके विवरण से मिलान करें:

स्तंभ A (नियम)	स्तंभ B (विवरण)
A. मांग का नियम	1. एक निश्चित बिंदु के बाद, बढ़ती हुई आगत सीमांत उत्पाद में गिरावट लाती है।
B. घटते सीमांत उत्पाद का नियम	2. आय बढ़ने पर मांग और कीमत विपरीत दिशाओं में चलती हैं।
C. परिवर्तनशील अनुपात का नियम	3. सीमांत उत्पाद शुरू में इनपुट उपयोग के साथ बढ़ता है, फिर गिर जाता है।

A-3, B-2, C-1

A-3, B-2, C-1

A-1, B-3, C-2

A-1, B-3, C-2

A-2, B-3, C-1

A-2, B-3, C-1

A-2, B-1, C-3

A-2, B-1, C-3

Q.No: 88 Which institution was established in 1961 to promote management education in India?

भारत में प्रबंधन शिक्षा को बढ़ावा देने के लिए 1961 में किस संस्थान की स्थापना की गई थी?

Indian Institute of Technology (IIT)

भारतीय प्रौद्योगिकी संस्थान (IIT)

University Grants Commission (UGC)

विश्वविद्यालय अनुदान आयोग (यूजीसी)

National Productivity Council (NPC)

राष्ट्रीय उत्पादकता परिषद

Indian Institute of Management (IIM)

भारतीय प्रबंध संस्थान (IIM)

Q.No: 89	Which schedule of the Constitution contains provisions for the disqualification of legislators under the anti-defection law? कौन-सी अनुसूची विधायकों को दलबदल कानून के तहत अयोग्य ठहराने के प्रावधानों को शामिल करती है?
	Ninth Schedule नौवीं अनुसूची Eleventh Schedule ग्यारहवीं अनुसूची Tenth Schedule दसवीं अनुसूची Eighth Schedule आठवीं अनुसूची

Q.No: 90	What is the scientific term for white blood cells? श्वेत रक्त कोशिकाओं के लिए वैज्ञानिक शब्द क्या है?
	Erythrocytes एरिथ्रोसाइट्स Leucocytes ल्यूकोसाइट्स Thrombocytes थ्रोम्बोसाइट्स Platelets प्लेटलेट्स

Q.No: 91	Which force governs the motion of planets, stars, and galaxies? कौन सा बल ग्रहों, तारों और आकाशगंगाओं की गति को नियंत्रित करता है?
	Nuclear force परमाणु बल Gravitational force गुरुत्वाकर्षण बल Magnetic force चुंबकीय बल Electromagnetic force विद्युतचुंबकीय बल

Q.No: 92	Which principle of the Digital Personal Data Protection Act, 2023 ensures that entities collecting personal data must obtain explicit consent from individuals? डिजिटल व्यक्तिगत डेटा संरक्षण अधिनियम, 2023 के अंतर्गत कौन-सा सिद्धांत यह सुनिश्चित करता है कि डेटा संग्रहण से पूर्व व्यक्ति की स्पष्ट सहमति आवश्यक है?
	Purpose Limitation उद्देश्य सीमितता सिद्धांत (Purpose Limitation) Storage Reduction Compliance भंडारण कटौती अनुपालन Data Localization डेटा स्थानीयकरण Notice and Choice Framework सूचना और पसंद आधारित ढाँचा Not Answered

Q.No: 93	The Law of Diminishing Marginal Utility states that as a consumer consumes more and more units of a commodity: घटती सीमांत उपयोगिता का नियम कहता है कि जैसे-जैसे उपभोक्ता किसी वस्तु के ज्यादा से ज्यादा यूनिट्स का उपभोग करता है:
	Marginal utility derived from each additional unit decreases.

प्रत्येक अतिरिक्त यूनिट से प्राप्त सीमांत उपयोगिता घटती है।

Total utility increases at an increasing rate.

कुल उपयोगिता बढ़ती दर से बढ़ती है।

Total utility decreases.

कुल उपयोगिता घटती है।

Marginal utility remains constant.

सीमांत उपयोगिता स्थिर रहती है।

Q.No: 94 Which of the following rivers forms a delta along the Eastern Coastal Plains?

निम्नलिखित में से कौन-सी नदी पूर्वी तटीय मैदानों में डेल्टा बनाती है?

Narmada

नर्मदा

Tapi

तापी नदी

Mahi

माही नदी

Godavari

गोदावरी

Q.No: 95 Match the following folk forms:

Column A (Folk Form)	Column B
A. Sohar	1. Echoed love songs sung by girls and boys on hilltops
B. Chhakri	2. Sung during birth celebrations, shows cultural fusion
C. Laman	3. All-night women's songs in rainy season, danced in semicircle
D. Kajri	4. Kashmiri group song with rabab, sarangi, tumbaknari

निम्नलिखित लोक रूपों का मिलान करें:

स्तंभ A (लोक रूप)	स्तंभ B
A. सोहर	1. पहाड़ियों की चोटियों पर लड़के-लड़कियों द्वारा गाए गए प्रेमगीत गूंज उठे
B. छकरी	2. जन्म उत्सव के दौरान गाया जाने वाला यह गीत सांस्कृतिक सम्मिश्रण को दर्शाता है
C. लेमैन	3. वर्षा ऋतु में रात भर गाए गए महिला गीत, अर्धवृत्ताकार नृत्य
D. कजरी	4. रबाब, सारंगी, तुम्बकनारी के साथ कश्मीरी समूह गीत

A-1, B-3, C-4, D-2

A-1, B-3, C-4, D-2

A-4, B-2, C-3, D-1

A-4, B-2, C-3, D-1

A-3, B-1, C-2, D-4

A-3, B-1, C-2, D-4

A-2, B-4, C-1, D-3

A-2, B-4, C-1, D-3

Not Answered

Q.No: 96 Which of these rivers does not originate in the Peninsular Plateau of India?

निम्नलिखित में से कौन-सी नदी भारत के प्रायद्वीपीय पठार से उद्गम नहीं लेती?

Godavari
गोदावरी नदी
Gangud
गंगा नदी
Krishna
कृष्णा नदी
Cauvery
कावेरी नदी

Q.No: 97	Which Rajput ruler defeated Muhammad Ghori in the First Battle of Tarain? तराइन के प्रथम युद्ध में मुहम्मद गौरी को पराजित करने वाले राजपूत शासक कौन थे?
Hem Chandra Vikramaditya	
हेमचंद्र विक्रमादित्य	
Rana Sanga	
राणा सांगा	
Bappa Rawal	
बप्पा रावल	
Prithviraj Chauhan	
पृथ्वीराज चौहान	

Q.No: 98	Which Mughal Emperor issued the Deccan campaign against the Marathas and spent significant time in the region? किस मुगल सम्राट ने मराठाओं के विरुद्ध दक्कन अभियान चलाया और इस क्षेत्र में लंबा समय बिताया?
Shah Jahan	
शाहजहाँ	
Aurangzeb	
औरंगज़ेब	
Jahangir	
जहांगीर	
Akbar	
अकबर	

Q.No: 99	Who was the founder of the Maurya Empire? मौर्य साम्राज्य की स्थापना किस शासक ने की थी?
Harshavardhana	
हर्षवर्धन	
Chandragupta Maurya	
चंद्रगुप्त मौर्य	
Ashoka	
अशोक	
Bindusara	
बिंदुसार	

Q.No: 100	What is the term for the shift of workers from agriculture to industry and services? कृषि क्षेत्र से उद्योग एवं सेवा क्षेत्र की ओर श्रमिकों के स्थानांतरण की प्रक्रिया को क्या कहते हैं?
Industrialization	
औद्योगीकरण	
Urbanization	
शहरीकरण	
Occupational diversification	
आजीविका का विविधीकरण	
Economic transition	
आर्थिक संक्रमण	

PART - C (English Language and Comprehension)

Q.No: 101 Choose the antonym of 'veracity':

Falsehood

Accuracy

Truthfulness

Honesty

Q.No: 102 Read the following passage and answer the questions based on the passage:

The rise of e-commerce has dramatically reshaped retail landscapes around the world. Consumers now enjoy unprecedented convenience, i.e., with only a click, we can compare prices, read reviews, and deliver goods directly to their doors. Brick-and-mortar stores, in contrast, must contend with higher overheads—rent, utilities, and staffing—that online retailers often avoid. Many physical shops have adopted “omnichannel” strategies to stay competitive, integrating their online and in-store experiences. For example, customers might order online and pick up in-store or use a mobile app to check real-time stock levels before visiting. However, some challenges still persist for small retailers because they lack the technical expertise or capital to develop user-friendly websites, and excessive reliance on third-party delivery services can erode profit margins. Moreover, the environmental impact of rapid shipping—packaging waste and increased carbon emissions—is increasingly under scrutiny. As e-commerce continues its ascent, the most successful retailers will combine digital innovation with sustainable practices and a personalized customer experience.

What is the primary purpose of this passage?

To advocate for brick-and-mortar retail over e-commerce

To describe how omnichannel strategies are best

To examine both opportunities and challenges in modern retail

To explain why delivery services are harmful

Q.No: 103 Read the following passage and answer the questions based on the passage:

The rise of e-commerce has dramatically reshaped retail landscapes around the world. Consumers now enjoy unprecedented convenience, i.e., with only a click, we can compare prices, read reviews, and deliver goods directly to their doors. Brick-and-mortar stores, in contrast, must contend with higher overheads—rent, utilities, and staffing—that online retailers often avoid. Many physical shops have adopted “omnichannel” strategies to stay competitive, integrating their online and in-store experiences. For example, customers might order online and pick up in-store or use a mobile app to check real-time stock levels before visiting. However, some challenges still persist for small retailers because they lack the technical expertise or capital to develop user-friendly websites, and excessive reliance on third-party delivery services can erode profit margins. Moreover, the environmental impact of rapid shipping—packaging waste and increased carbon emissions—is increasingly under scrutiny. As e-commerce continues its ascent, the most successful retailers will combine digital innovation with sustainable practices and a personalized customer experience.

In context, the word “overheads” most nearly means:

Profits

Fixed expenses

Revenues

Discounts

Q.No: 104	<p>Read the following passage and answer the questions based on the passage:</p> <p>The rise of e-commerce has dramatically reshaped retail landscapes around the world. Consumers now enjoy unprecedented convenience, i.e., with only a click, we can compare prices, read reviews, and deliver goods directly to their doors. Brick-and-mortar stores, in contrast, must contend with higher overheads—rent, utilities, and staffing—that online retailers often avoid. Many physical shops have adopted “omnichannel” strategies to stay competitive, integrating their online and in-store experiences. For example, customers might order online and pick up in-store or use a mobile app to check real-time stock levels before visiting. However, some challenges still persist for small retailers because they lack the technical expertise or capital to develop user-friendly websites, and excessive reliance on third-party delivery services can erode profit margins. Moreover, the environmental impact of rapid shipping—packaging waste and increased carbon emissions—is increasingly under scrutiny. As e-commerce continues its ascent, the most successful retailers will combine digital innovation with sustainable practices and a personalized customer experience.</p> <p>According to the passage, which of the following is NOT cited as a challenge for small retailers?</p>
-----------	--



Your file couldn't be accessed

It may have been moved, edited, or deleted.

ERR_FILE_NOT_FOUND

High utility bills

Dependence on delivery services

Environmental scrutiny

Q.No: 105	<p>Read the following passage and answer the questions based on the passage:</p> <p>The rise of e-commerce has dramatically reshaped retail landscapes around the world. Consumers now enjoy unprecedented convenience, i.e., with only a click, we can compare prices, read reviews, and deliver goods directly to their doors. Brick-and-mortar stores, in contrast, must contend with higher overheads—rent, utilities, and staffing—that online retailers often avoid. Many physical shops have adopted “omnichannel” strategies to stay competitive, integrating their online and in-store experiences. For example, customers might order online and pick up in-store or use a mobile app to check real-time stock levels before visiting. However, some challenges still persist for small retailers because they lack the technical expertise or capital to develop user-friendly websites, and excessive reliance on third-party delivery services can erode profit margins. Moreover, the environmental impact of rapid shipping—packaging waste and increased carbon emissions—is increasingly under scrutiny. As e-commerce continues its ascent, the most successful retailers will combine digital innovation with sustainable practices and a personalized customer experience.</p> <p>The tone of the passage can best be described as:</p>
Alarmist	
Analytical	
Enthusiastic	
Sarcastic	

Q.No: 106	<p>Read the following passage and answer the questions based on the passage:</p> <p>The rise of e-commerce has dramatically reshaped retail landscapes around the world. Consumers now enjoy unprecedented convenience, i.e., with only a click, we can compare prices, read reviews, and deliver goods directly to their doors. Brick-and-mortar stores, in contrast, must contend with higher overheads—rent, utilities, and staffing—that online retailers often avoid. Many physical shops have adopted “omnichannel” strategies to stay competitive, integrating their online and in-store experiences. For example, customers might order online and pick up in-store or use a mobile app to check real-time stock levels before visiting. However, some challenges still persist for small retailers because they lack the technical expertise or capital to develop user-friendly websites, and excessive reliance on third-party delivery services can erode profit margins. Moreover, the environmental impact of rapid shipping—packaging waste and increased carbon emissions—is increasingly under scrutiny. As e-commerce continues its ascent, the most successful retailers will combine digital innovation with sustainable practices and a personalized customer experience.</p> <p>Which inference is best supported by the passage?</p>
-----------	--

All retailers will eventually go fully online.

Personalized experiences are key to future retail success.

Third-party delivery is always unprofitable.

Packaging waste has minimal impact on consumers.

Q.No: 107 In the following passage, some words have been deleted. Read the passage carefully and select the most appropriate option to fill in each blank:

Modern ethical debates tend to concern the conflict between deontological and consequentialist approaches, each providing a (1) _____ methodology. Deontology requires respect for moral (2) _____ irrespective of the result, while consequentialism judges on the basis of the net (3) _____. Objections against pure consequentialism suggest it will allow (4) _____ actions if these bring about maximum overall welfare. In reply, some recommend (5) _____ hybrid theories that combine obligations with outcome sensitivity.

What should come in the place of blank number 1?

quarrelsome

rigorous

cursory

vacuous

Q.No: 108 In the following passage, some words have been deleted. Read the passage carefully and select the most appropriate option to fill in each blank:

Modern ethical debates tend to concern the conflict between deontological and consequentialist approaches, each providing a (1) _____ methodology. Deontology requires respect for moral (2) _____ irrespective of the result, while consequentialism judges on the basis of the net (3) _____. Objections against pure consequentialism suggest it will allow (4) _____ actions if these bring about maximum overall welfare. In reply, some recommend (5) _____ hybrid theories that combine obligations with outcome sensitivity.

What should come in the place of blank number 2?

mood

actions

conjectures

fallacies

Q.No: 109 In the following passage, some words have been deleted. Read the passage carefully and select the most appropriate option to fill in each blank:

Modern ethical debates tend to concern the conflict between deontological and consequentialist approaches, each providing a (1) _____ methodology. Deontology requires respect for moral (2) _____ irrespective of the result, while consequentialism judges on the basis of the net (3) _____. Objections against pure consequentialism suggest it will allow (4) _____ actions if these bring about maximum overall welfare. In reply, some recommend (5) _____ hybrid theories that combine obligations with outcome sensitivity.

What should come in the place of blank number 3?

goods

outcomes

benefits

profit

Q.No: 110	<p>In the following passage, some words have been deleted. Read the passage carefully and select the most appropriate option to fill in each blank:</p> <p>Modern ethical debates tend to concern the conflict between deontological and consequentialist approaches, each providing a (1) _____ methodology. Deontology requires respect for moral (2) _____ irrespective of the result, while consequentialism judges on the basis of the net (3) _____. Objections against pure consequentialism suggest it will allow (4) _____ actions if these bring about maximum overall welfare. In reply, some recommend (5) _____ hybrid theories that combine obligations with outcome sensitivity.</p> <p>What should come in the place of blank number 4?</p>
Laudable	
Immoral	
Beneficial	
Delightful	

Q.No: 111	<p>In the following passage, some words have been deleted. Read the passage carefully and select the most appropriate option to fill in each blank:</p> <p>Modern ethical debates tend to concern the conflict between deontological and consequentialist approaches, each providing a (1) _____ methodology. Deontology requires respect for moral (2) _____ irrespective of the result, while consequentialism judges on the basis of the net (3) _____. Objections against pure consequentialism suggest it will allow (4) _____ actions if these bring about maximum overall welfare. In reply, some recommend (5) _____ hybrid theories that combine obligations with outcome sensitivity.</p> <p>What should come in the place of blank number 5?</p>
-----------	--



Your file couldn't be accessed

It may have been moved, edited, or deleted.

ERR_FILE_NOT_FOUND

Well-balanced
over simple
Irrelevant

Q.No: 112	<p>In the following passage, some words have been deleted. Read the passage carefully and select the most appropriate option to fill in each blank:</p> <p>Researchers in quantum computing face the twin difficulties of (1) _____ qubit coherence and (2) _____ error rates. While superconducting qubits have shown promise, maintaining coherence beyond microseconds remains (3) _____ due to environmental decoherence. Furthermore, scaling up the number of qubits requires (4) _____ control electronics that themselves introduce noise. To overcome these hurdles, teams are exploring (5) _____ techniques such as surface codes and topological qubits.</p> <p>What should come in the place of blank 1?</p>
to durable	
ephemera	
Permanent	
Perennial	

Q.No: 113	<p>In the following passage, some words have been deleted. Read the passage carefully and select the most appropriate option to fill in each blank:</p> <p>Researchers in quantum computing face the twin difficulties of (1) _____ qubit coherence and (2) _____ error rates. While superconducting qubits have shown promise, maintaining coherence beyond microseconds remains (3) _____ due to environmental decoherence. Furthermore, scaling up the number of qubits requires (4) _____ control electronics that themselves introduce noise. To overcome these hurdles, teams are exploring (5) _____ techniques such as surface codes and topological qubits.</p> <p>What should come in the place of 2?</p>
negligible	
prohibitive	
cheap	
low	

Q.No: 114	<p>In the following passage, some words have been deleted. Read the passage carefully and select the most appropriate option to fill in each blank:</p> <p>Researchers in quantum computing face the twin difficulties of (1) _____ qubit coherence and (2) _____ error rates. While superconducting qubits have shown promise, maintaining coherence beyond microseconds remains (3) _____ due to environmental decoherence. Furthermore, scaling up the number of qubits requires (4) _____ control electronics that themselves introduce noise. To overcome these hurdles, teams are exploring (5) _____ techniques such as surface codes and topological qubits.</p> <p>What should come in the place of 3?</p>
tractable	
elusive	
innate	
redundant	
Not Answered	

Q.No: 115	<p>In the following passage, some words have been deleted. Read the passage carefully and select the most appropriate option to fill in each blank:</p> <p>Researchers in quantum computing face the twin difficulties of (1) _____ qubit coherence and (2) _____ error rates. While superconducting qubits have shown promise, maintaining coherence beyond microseconds remains (3) _____ due to environmental decoherence. Furthermore, scaling up the number of qubits requires (4) _____ control electronics that themselves introduce noise. To overcome these hurdles, teams are exploring (5) _____ techniques such as surface codes and topological qubits.</p> <p>What should come in the place of 4?</p>
austere	
sophisticated	
rudimentary	
obsolete	

Q.No: 116	<p>In the following passage, some words have been deleted. Read the passage carefully and select the most appropriate option to fill in each blank:</p> <p>Researchers in quantum computing face the twin difficulties of (1) _____ qubit coherence and (2) _____ error rates. While superconducting qubits have shown promise, maintaining coherence beyond microseconds remains (3) _____ due to environmental decoherence. Furthermore, scaling up the number of qubits requires (4) _____ control electronics that themselves introduce noise. To overcome these hurdles, teams are exploring (5) _____ techniques such as surface codes and topological qubits.</p> <p>What should come in the place of 5?</p>
fallacious	
quantum-error-correcting	
presumptive	

monochromatic

Q.No: 117 Choose the correct one word substitution for: "A person who is indifferent to pleasure or pain".

Epicure

Stoic

Pessimist

Masochist

Q.No: 118 Select the correct spelling of a word meaning 'fond of company; sociable'.

Gegareous

Gregerious

Grigarious

Gregarious

Q.No: 119 Fill in the blank with an appropriate article.

There is _____ hour left for you to get ready.

a

an

the

many

Q.No: 120 Identify the word that doesn't fit the part of speech needed.

She made a quickly decision without thinking.

decision

quickly

made

thinking

Q.No: 121 Select the correct Synonym of 'ENERVATE'.

Strengthen

Revive

Motivate

Exhaust

Q.No: 122 Identify the error in the sentence.

By the time they arrive, the concert had ended.

time

arrive

concert
ended

Q.No: 123 Select the most appropriate option to fill in the blank.
Listen carefully ____ what I say.

on

to

by

in

Q.No: 124 A sentence is provided in indirect speech. From the four given options, choose the one that most accurately conveys the sentence in its corresponding direct speech.

My friend said that he could meet me after lunch.

My friend said, "Shall I meet you after lunch?"

My friend said, "I could meet you after lunch."

My friend said, "May I meet you after lunch?"

My friend said, "I can meet you after lunch."

Q.No: 125 Find the incorrect part of the sentence:
He was senior than me in college.

senior than

No error

me in college

He was

Q.No: 126 Arrange the parts to form a correct sentence:

- (1) The exhibition opened to the public.
- (2) Visitors admired the artworks.
- (3) Interactive sessions were conducted.
- (4) Feedback was overwhelmingly positive.

1-2-4-3

1-2-3-4

2-3-1-4

2-3-1-4

Q.No: 127 Choose the correct phrase for the word highlighted in bold.

Let's try to **think outside the box** and come up with a new solution to this problem.

To consider unconventional and creative solutions.

To reject all solutions without analysis.

To solve problems using only existing rules.

To follow traditional methods strictly.

Q.No: 128	Choose the correctly spelt word:
Servillance	
Survailance	
Survilance	
Surveillance	

Q.No: 129	Which of the following is an example of onomatopoeia?
Murmur	
Silence	
Baloon	
Horrible	
Not Answered	

Q.No: 130	Find the incorrect part of the sentence: She has been teaching in this school since five years.
No error	
She has been teaching	
in this school	
since five years	

Q.No: 131	Select the antonym of 'Oracular'.
Lucid	
Impress	
Anxious	
idealistic	

Q.No: 132	Choose the correct one word substitution for: "An ideal society marked by justice, equality, and happiness."
Oligarchy	
Technocracy	
Dystopia	
Utopia	

Q.No: 133	Rearrange the parts of the sentence in the correct order. Inflation P. making it difficult for households Q. to manage daily expenses R. affects purchasing power S. and leads to increased cost of living,
QSPR	
SRQP	
PQRS	

Q.No: 134 Convert the sentence provided below from its passive voice structure to an active voice structure:
The book was read by the student in just two days.

The student was reading the book in just two days.

The book is read by the student in just two days.

The student has read the book in just two days.

The student read the book in just two days.

Q.No: 135 Select the correct active form of the given sentence.
"The book is being read by him."

He was reading the book.

He is reading the book.

He has read the book.

He reads the book.

Q.No: 136 Which complex term is misspelt below?

Pseudonym

Epitaph

Inocuous

Circumlocution

Q.No: 137 Which of the following words means "prohibited by law or treaty from being imported or exported"?

Restricted

Illegal

Banned

Contraband

Q.No: 138 Choose the correct indirect speech form of the following sentence.
Rehan said to Mallika, "The Somnath Temple is in Prabhas Patan in Gujarat."

Rehan told Mallika that the Somnath Temple was in Prabhas Patan in Gujarat.

Rehan told Mallika that the Somnath Temple had been in Prabhas Patan in Gujarat.

Rehan told Mallika that the Somnath Temple has been in Prabhas Patan in Gujarat.

Rehan told Mallika that the Somnath Temple is in Prabhas Patan in Gujarat.

Q.No: 139 Which of the following sentences correctly uses the idiom "a slip of the tongue"?

The chef burned his hand and let out a slip of the tongue.

Sneha carefully planned her speech to ensure a slip of the tongue.

Sunita lost her balance while walking and had a slip of the tongue.

Ravi misspoke during the interview; it was just a slip of the tongue.

Q.No: 140 Select the sentence with correct use of article 'the.'

Dr. Johnson met the Shakespeare in England.

Kalidas is the Shakespeare of India.

Dr. Johnson saw the Shakespeare acting in King Lear.

Dr. Johnson had instructed the Shakespeare to write The Tempest.

Q.No: 141 Choose the antonym of 'Peevish'.

Suave

Flat

Tedious

Dull

Q.No: 142 Choose the sentence that uses a homonym of the underlined word:
He left the watch on the nightstand before sleeping.

The guard was assigned to night watch duty.

The watch was ticking softly beside the lamp.

He set his digital watch to the right time.

She bought a new gold watch for her husband.

Q.No: 143 Choose the antonym of 'Slander'.

Mock

Praise

Blame

Abuse

Q.No: 144 Choose the correct meaning of Idiom "Cut the Gordian knot".

Create unnecessary complications

Disagree with authority

Tie unrelated issues together

Solve a problem boldly

Q.No: 145 A sentence is provided in direct speech. From the four given options, choose the one that most accurately conveys the sentence in its corresponding indirect speech.

The officer said, "Had I known about the problem earlier, I would have helped."

The officer said he had helped if he had known it.

The officer told if he knew about the problem, he would help.

The officer said that he know if he had helped.

The officer said that if he had known about the problem earlier, he would have helped.

Q.No: 146 Select the most appropriate option to fill in the blank.
The boy was indifferent ____ his studies.

on

to

at

in

Q.No: 147 Rearrange the following parts (P, Q, R, S) to form the most meaningful and grammatically correct sentence:

P. though he lacked international experience

Q. was selected for the Olympic squad

R. the young shooter

S. due to his exceptional performance at the national trials

P S R Q

R Q P S

R Q S P

P R Q S

Q.No: 148 Select the correct passive form of the given sentence.
"He will submit the report by Friday."

The report is submitted by him by Friday.

The report will have been submitted by him.

The report submitted by him by Friday.

The report will be submitted by him by Friday.

Q.No: 149 Find the part of the sentence that contains an error:

The teacher who had conducted the workshop earlier, (1)/ along with his assistants, (2)/ have submitted the final report to the board (3)/ before the deadline last week. (4)

before the deadline last week (4)

have submitted the final report to the board (3)

The teacher who had conducted the workshop earlier (1)

along with his assistants (2)

Q.No: 150 Rearrange the parts of the sentence in the correct order.

The update

P. ensuring security

Q. enhanced encryption

R. and data autonomy

S. across user devices

SRPQ

QRPS

PSRQ

Q.No: 151 Find the part of the sentence that contains an error:
Each participant who registered online for the event (1)/ were given a welcome kit (2)/ along with the program schedule and map (3)/ at the helpdesk near the entrance. (4)/

at the helpdesk near the entrance. (4)

were given a welcome kit (2)

along with the program schedule and map (3)

Each participant who registered online for the event (1)

Q.No: 152 Choose the correct indirect speech form of the following sentence.

Roshni said to Rakesh, "Time and tide waits for none."

Roshni told Rakesh if time and tide waited for none.

Roshni told Rakesh that time and tide waits for none.

Roshni told Rakesh whether time and tide waited for none.

Roshni told Rakesh that time and tide waited for none.

Q.No: 153 Choose the correct one-word substitution for:
"A humorous poem of five lines"

Elegy

Limerick

Haiku

Sonnet

Q.No: 154 Rearrange the parts of the sentence in the correct order.

The economic slowdown
P. reducing consumer spending
Q. in multiple industries
R. straining household incomes and
S. has led to job losses

QSPR

SQRP

PRSQ

RSPQ

Q.No: 155 Find the synonym of 'Encumbrance'.

Offend

Obstacle

Ignore

Disinterest

Not Answered

Q.No: 156	Choose the most suitable option to replace the underlined part of the sentence. If the sentence is already correct, select 'No substitution required'. By the time <u>we will reach</u> , the concert will have started.
we reached	
No improvement	
<u>we reach</u>	
we have reached	

Q.No: 157	Select the synonym of Reckless .
Prudent	
Cautious	
Careful	
<u>Rash</u>	

Q.No: 158	A sentence is provided in indirect speech. From the four given options, choose the one that most accurately conveys the sentence in its corresponding direct speech. The teacher said that the sun rises in the east.
The teacher said, "The sun rising in the east."	
The teacher said, "The sun rose in the east."	
The teacher said, "The sun has risen in the east."	
<u>The teacher said, "The sun rises in the east."</u>	

Q.No: 159	A sentence is provided in direct speech. From the four given options, choose the one that most accurately conveys the sentence in its corresponding indirect speech. She said to her friend, "What a beautiful painting you have made!"
<u>She exclaimed to her friend that she had made a very beautiful painting.</u>	
She told her that the painting is beautiful.	
She exclaimed to her friend that she had made a very beautiful painting.	
She shouted that painting was very nice.	

Q.No: 160	Fill in the blank with the appropriate tense. Jobin has been working all day. He _____ tired.
can be	
<u>will be</u>	
shall be	
<u>must be</u>	

Q.No: 161	<p>Which of the given options is the most logical sequencing of the following sentences to form a meaningful paragraph?</p> <ol style="list-style-type: none"> 1. The primary factor in its formation was the Colorado River, which gradually carved through layers of rock, deepening and widening the canyon. 2. The Grand Canyon was formed over millions of years through the combined forces of geological activity and erosion. 3. Weathering from wind, rain, and temperature changes further shaped the canyon's intricate rock formations. 4. Tectonic uplift of the Colorado Plateau increased the river's flow and erosive power, allowing it to cut deeper into the landscape.
1-3-4-2	
3-2-1-4	
2-1-4-3	
4-3-2-1	

Q.No: 162	<p>Choose the correct option to complete the sentence.</p> <p>The engineer visited the construction _____ to check the progress of the building.</p>
site	
site	
sight	
cite	

Q.No: 163	<p>Choose the most suitable option to replace the underlined part of the sentence. If the sentence is already correct, select 'No substitution required'.</p> <p>The old lady was unable to climb stairs because her legs <u>is aching constantly</u> since morning.</p>
is been aching constantly	
have been aching constantly	
Had been aches constantly	
No substitution required	

Q.No: 164	<p>Which of the given options is the most logical sequencing of the following sentences to form a meaningful paragraph?</p> <ol style="list-style-type: none"> 1. He co-founded Apple Inc. along with Wozniak. 2. Steve Jobs was a visionary entrepreneur and innovator. 3. His ideas continue to influence modern technology and design. 4. Apple Inc. introduced products like iPhone and iPad.
3-1-2-4	
2-1-4-3	
1-2-4-3	
4-3-1-2	

Q.No: 165	<p>A sentence is provided in direct speech. From the four given options, choose the one that most accurately conveys the sentence in its corresponding indirect speech.</p> <p>The teacher said, "Open your books."</p>
-----------	---

The teacher asked them to open their books.

The teacher asked to open books.

The teacher ordered them opening the books.

The teacher said them open your books.

Q.No: 166 Choose the sentence that uses a homonym of the underlined word:
Please close the window before leaving.

He forgot to **close** the file before shutting the laptop.

I always **close** the curtains at night.

Their bond grew **close** over the years.

Make sure to **close** the back door too.

Q.No: 167 **Change the following from active to passive:**
By the time the team arrived, the technicians had already repaired the control panel and tested all functions twice.

By the time the team arrived, the control panel had already been repaired, and all functions had been tested twice by the technicians

All functions were being tested by the time the team arrived.

Everything was fixed before the team reached the site.

The technicians repaired and tested everything twice before the team arrived.

Q.No: 168 Spot the spelling error.

Archaetype

Misanthrope

Quintessential

Resurgence

Not Answered

Q.No: 169 Choose the correct one-word substitution for:
"A person who hates other people or mankind"

Misanthrope

Optimist

Egoist

Misogynist

Q.No: 170 Choose the sentence which uses the adjective/adverb in its superlative degree correctly.

My uncle goes to that shop mostly frequently.

My uncle goes to that shop the more frequently.

My uncle goes to that shop very most frequently.

My uncle goes to that shop most frequently.

Q.No: 171	Find the part of the sentence that contains an error: One of the guest speakers who addressed the seminar (1)/ and interacted with students (2)/ were praised widely for their clarity and enthusiasm (3)/ during the closing ceremony. (4)
	and interacted with students (2)
	were praised widely for their clarity and enthusiasm (3)
	during the closing ceremony (4)
	One of the guest speakers who addressed the seminar (1)

Q.No: 172	Select the synonym of Diligent .
	Idle
	Careless
	Indolent
	Hardworking

Q.No: 173	Select the correct active form of the given sentence. "The window had been broken by the boy."
	The boy has broken the window.
	The boy is breaking the window.'
	The boy broke the window.
	The boy had broken the window.

Q.No: 174	Select the option that correctly replaces the underlined phrase in the following sentence: The doctor gave the patient some medications after he <u>felt</u> some pain on his left knee.
	did feel
	has felt
	had felt
	was felt

Q.No: 175	The violinist played a beautiful ___ during the concert.
	piece
	peas
	peace
	pace

Q.No: 176	Select the most appropriate option to fill in the blank. She was absorbed ___ reading.
	by
	to
	in
	at

Q.No: 177	Select the correct passive form of the given sentence. "She is painting the wall."
The wall has painted.	
The wall is being painted by her.	
The wall was being painted.	
The wall is painted by her.	

Q.No: 178	Identify the part containing a grammatical or structural error: Neither the Principal nor the teachers was present.
No error	
nor the teachers	
was present	
Neither the Principal	

Q.No: 179	Choose the correct one word substitution for: "The practice of deliberately expressing less than what is meant."
Euphemism	
Irony	
Hyperbole	
Litotes	

Q.No: 180	Select the correct Synonym of 'EXASPERATE'.
Distract	
Inspire	
Calm	
Annoy	

Q.No: 181	Arrange the parts to form a correct sentence: (1) The athlete trained relentlessly. (2) He overcame several injuries. (3) He qualified for the finals. (4) He inspired young players.
2-1-3-4	
1-2-3-4	
1-2-4-3	
1-3-2-4	

Q.No: 182	Which figure of speech is used in "The old lady wept a river of tears"?
Euphemism	
Hyperbole	

Alliteration

Anticlimax

Q.No: 183 Choose the correct meaning of the idiom:
'Cast pearls before swine'

Sell things at very high prices

Share secrets with close friends

Hide something precious from everyone

Give valuable things to undeserving

Q.No: 184 Choose the antonym of 'pompous'.

Submissive

Energy

Urgency

Delight

Q.No: 185 The following sentence is in indirect speech. Choose the option that conveys it in direct speech.
He said that he had been waiting there for more than two hours before the gates finally opened.

He said, "I have been waiting here since two hours before the gates opened."

He said, "I waited here two hours before gates opened."

He said, "I was waiting here for more than two hours before the gates finally opened."

He said, "I had waiting there before the gates opened."

Q.No: 186 Convert the sentence provided below from its passive voice structure to an active voice structure.
The poem was composed by the student during the literature class.

The student composed the poem during the literature class.

The student had composed the poem during the class.

The poem is being composed by the student during the class.

The student is composing the poem during the literature class.

Q.No: 187 Select the most appropriate option to fill in the blank.
The manager was satisfied ____ the work.

for

with

to

by

Q.No: 188 Choose the underlined part of the sentence with an appropriate idiom:
As the president of a major company, Harshith is used to being the focus of attention.

The elephant in the room

A dime a dozen

Under the weather

In the limelight

Q.No: 189 A sentence is provided in direct speech. From the four given options, choose the one that most accurately conveys the sentence in its corresponding indirect speech.

They said, "We shall visit the museum tomorrow."



They said they would be visiting the museum.

Q.No: 190



The authorities had taken the emergency steps before the storm hit.

The storm was faced with emergency steps.

The authorities took emergency steps.

The emergency steps were taken before the storm hit.

Q.No: 191

Choose the antonym of 'vindicate':

Exonerate

Accuse

Defend

Justify

Q.No: 192

Select the most appropriate option to improve the bold part of the sentence.

The plane landed **in the airport**.

to the airport

into the airport

at the airport

towards airport

Q.No: 193

Convert the sentence provided below from its passive voice structure to an active voice structure:

All the entries must have been verified by the auditor before submission.

All the entries are to be verified before submission.


The auditor was verifying all entries before submission.

The auditor must have verified all the entries before submission.





All entries were verified by the auditor.

Q.No: 194	Which of the given options is the most logical sequencing of the following sentences to form a meaningful paragraph? 1. His observations eventually contributed to his groundbreaking book, <i>On the Origin of Species</i> . 2. The Galápagos Islands are famous for their diverse wildlife and their role in Charles Darwin's theory of evolution. 3. This led him to propose the idea of natural selection, where species evolve over time to adapt to their environment. 4. Darwin observed that finches on different islands had distinct beak shapes suited to their specific diets.
2-4-1-3	
4-2-3-1	
2-4-3-1	
1-3-2-4	

Q.No: 195	Select the most appropriate option to improve the bold part of the sentence. If I was you , I would accept the offer.
am you	
have been you	
were you	
would be you	

Q.No: 196	Fill in the blank with an appropriate degree of comparison. Hari is _____ than Sohan in solving mathematical problems.
most talented	
	
more talented	
talenter	

Q.No: 197	Fill in the blank with appropriate prepositions. The soldier was suspected _____ being a spy and was put behind bars.
of	
after	
by	
up	

Q.No: 198	Choose the most suitable option to replace the underlined part of the sentence. If the sentence is already correct, select 'No substitution required'. The team has been preparing for the match <u>since two months</u> without a break.
	
	
	
	

Q.No: 199



from the airport

me from

Q.No: 200

Choose the sentence that uses a homonym of the underlined word:

The judge will sentence the accused tomorrow.

He received a ten-year sentence for the crime.

The lawyer defended the sentence fiercely.

The courtroom fell silent during the sentence.

She wrote a beautiful sentence in her diary.

KD Job Updates



SSC ONLINE EXAMINATION

CANDIDATE RESPONSE SHEET/GRIEVANCE SYSTEM

[View Your Responses](#)
[Click Here Grievance About Question](#)
[Click Here View Grievance Questions](#)

Admin loggedin. [[Logout](#)]

Exam Name : Steno Grade C and D ▾

Test Date : 06 Aug 2025

Test Time : 01:15 PM

Centre : MHNAS243_NASHIK WEB SOLUTION_220802

Correct Option selected Wrong Option selected Correct Option Not Answered

PART - A (General Intelligence & Reasoning).

Q.No: 1	Fill in the blank: 1, 2, 6, 24, 120, ____ रिक्त स्थान भरें: 1, 2, 6, 24, 120, ____
840	
840	
960	
960	
720	
720	
600	
600	

Q.No: 2	Which number does not belong: कौन सा नंबर इसमें शामिल नहीं है:
123	
123	
213	
213	
212	
212	
312	
312	

Q.No: 3	B is to E as D is to: B, E से उसी प्रकार संबंधित है जिस प्रकार D:
I	
I	
H	
H	
E	
E	
F	
F	

Q.No: 4	All metals are good conductors of electricity. Copper is a metal. Which conclusion can be drawn? सभी धातुएँ विद्युत की अच्छी सुचालक होती हैं। तांबा भी एक धातु है। इससे क्या निष्कर्ष निकाला जा सकता है?
Copper is not a conductor	
तांबा सुचालक नहीं है	

Copper is a metal only
तांबा केवल एक धातु है
Copper is a poor conductor
तांबा एक खराब सुचालक है
Copper is a good conductor
तांबा एक अच्छा सुचालक है

Q.No: 5	<p>In each of these questions, a number series is given. In each series, only one number is wrong number. Find out the wrong number. 2, 7, 25, 108, 531, 3193</p> <p>इनमें से प्रत्येक प्रश्न में एक संख्या श्रृंखला दी गई है। प्रत्येक श्रृंखला में केवल एक संख्या गलत है। गलत संख्या ज्ञात कीजिए। 2, 7, 25, 108, 531, 3193</p>
3193	
3193	
531	
531	
25	
25	
108	
108	

Q.No: 6	<p>If + means -, ÷ means +, - means ×, and × means ÷ then, what is 30 - 5 + 10 ÷ 5?</p> <p>यदि + का अर्थ - है, ÷ का अर्थ + है, - का अर्थ × है, और × का अर्थ ÷ है, तो 30 - 5 + 10 ÷ 5 क्या है?</p>
150	
150	
145	
145	
155	
155	
160	
160	

Q.No: 7	<p>In each of the following questions, a word is transformed into another word by applying a specific alphabetical pattern to each of its letters. Identify the logic used in the first pair and apply the same logic to the second word to determine the correct answer.</p> <p>FROST : ITQSR :: CHALK : ?</p> <p>निम्नलिखित प्रत्येक प्रश्न में, एक शब्द को उसके प्रत्येक अक्षर पर एक विशिष्ट वर्णमाला पैटर्न लागू करके दूसरे शब्द में बदला गया है। पहले जोड़े में प्रयुक्त तर्क को पहचानिए और सही उत्तर निर्धारित करने के लिए उसी तर्क को दूसरे शब्द पर लागू कीजिए।</p> <p>FROST : ITQSR :: CHALK : ?</p>
KLPOR	
KLPOR	
GHOCK	
GHOCK	
HTIME	
HTIME	

Q.No: 8	<p>Find the next term in the given letter series: AAGHGHGH, GAAHGHGH, GHAAHGHG, GHGHAAHG, GHGHGAAH, _____.</p> <p>दी गई अक्षर श्रृंखला में अगला पद ज्ञात कीजिए: AAGHGHGH, GAAHGHGH, GHAAHGHG, GHGHAAHG, GHGHGAAH, _____.</p>
GHGHGAAH	
GHGHGAAH	
GAAHGHGH	
GAAHGHGH	
AAGHGHGH	
AAGHGHGH	
GHGHGAAH	
GHGHGAAH	

Q.No: 9	<p>In the following question, a pair of words is given in capital letters, followed by five answer options consisting of word pairs. Choose the option in which the relationship between the two words most closely matches the relationship between the given pair.</p> <p>PROFLIGATE : FRUGALITY</p> <ol style="list-style-type: none"> 1. Mendacious : Truth 2. Ubiquitous : Presence 3. Punctilious : Detail 4. Gregarious : Solitude 5. Insipid : Flavor <p>निम्नलिखित प्रश्न में, बड़े अक्षरों में शब्दों का एक युग्म दिया गया है, जिसके बाद शब्द युग्मों वाले पाँच उत्तर विकल्प दिए गए हैं। उस विकल्प का चयन कीजिए जिसमें दो शब्दों के बीच का संबंध दिए गए युग्म के बीच के संबंध से सबसे अधिक मेल खाता हो। फिजूलखर्ची : मितव्ययिता</p> <ol style="list-style-type: none"> 1. मिथ्याभिमानि : सत्य 2. सर्वव्यापी : उपस्थिति 3. समयनिष्ठ : विस्तृत 4. मिलनसार : एकांत 5. नीरस : स्वाद
---------	---

Ubiquitous : Presence

सर्वव्यापी : उपस्थिति

Insipid : Flavor

बेस्वाद : स्वाद

Punctilious : Detail

समयनिष्ठ : विस्तृत

Mendacious : Truth

मिथ्याभिमानि : सत्य

Q.No: 10	<p>Statements:</p> <ol style="list-style-type: none"> 1. No pens are pencils. 2. Some pencils are erasers. <p>Conclusions:</p> <ol style="list-style-type: none"> I. Some erasers are not pens. II. No pens are erasers. <p>कथन:</p> <ol style="list-style-type: none"> 1. कोई पेन पेंसिल नहीं है। 2. कुछ पेंसिल इरेज़र हैं। <p>निष्कर्ष:</p> <ol style="list-style-type: none"> I. कुछ इरेज़र पेन नहीं हैं। II. कोई पेन इरेज़र नहीं है।
----------	--

Only II follows

केवल II अनुसरण करता है

Both I and II follow

I और II दोनों अनुसरण करते हैं

Only I follows

केवल I अनुसरण करता है

Neither I nor II follows

न तो I और न ही II अनुसरण करता है

Q.No: 11	<p>Ravi walks 20 m N, right 30 m, again right 20 m. Which direction now?</p> <p>रवि 20 मीटर उत्तर की ओर, 30 मीटर दाएं, फिर 20 मीटर दाएं चलता है। अब किस दिशा में?</p>
West	
पश्चिम	
East	
पूर्व	
South	
दक्षिण	
North	
उत्तर	

Q.No: 12	Anita is ranked 15th from the top in a class of 45 students. Sita is ranked 20th from the bottom. How many students are there between Anita and Sita? 45 छात्रों की एक कक्षा में अनीता शीर्ष से 15वीं रैंक पर है। सीता नीचे से 20वीं रैंक पर है। अनीता और सीता के बीच कितने छात्र हैं?
10	
10	
9	
9	
11	
11	
12	
12	

Q.No: 13	Rohit is planning a special dinner to celebrate his wife's 40th birthday. She enjoys cozy, informal gatherings and loves Indian street food more than fancy, high-end dining. Which of the following restaurants would be the best fit for her? रोहित अपनी पत्नी के 40वें जन्मदिन का जश्न मनाने के लिए एक विशेष रात्रिभोज की योजना बना रहा है। वह आरामदायक, अनौपचारिक समारोहों का आनंद लेती है और उसे फैसी, हाई-एंड डाइनिंग से ज़्यादा भारतीय स्ट्रीट फूड पसंद है। निम्नलिखित में से कौन सा रेस्तराँ उसके लिए सबसे उपयुक्त होगा? Spice Symphony features contemporary Indian fusion cuisine with an upscale modern ambiance and a focus on creative plating. स्पाइस सिम्फनी में आधुनिक माहौल के साथ समकालीन भारतीय फ्यूजन व्यंजन परोसे जाते हैं और रचनात्मक प्लेटिंग पर ध्यान दिया जाता है। Tandoori Trails is a fine-dining restaurant specializing in North Indian kebabs and rich curries with sophisticated decor. तंदूरी ट्रेल्स एक बेहतरीन भोजनालय है जो परिष्कृत सजावट के साथ उत्तर भारतीय कबाब और स्वादिष्ट करी परोसने में माहिर है। Royal Rasoi offers an elegant dining experience with traditional Rajasthani royal cuisine served in a palace-like setting. रॉयल रसोई एक महल जैसे वातावरण में परोसे जाने वाले पारंपरिक राजस्थानी शाही व्यंजनों के साथ एक शानदार भोजन अनुभव प्रदान करती है। Chaat Chowk serves a variety of popular Indian street foods like pani puri, pav bhaji, and aloo tikki in a casual, vibrant, and bustling atmosphere reminiscent of Mumbai's famous street stalls. चाट चौक में विभिन्न प्रकार के लोकप्रिय भारतीय स्ट्रीट फूड जैसे पानी पुरी, पाव भाजी और आलू टिक्की परोसे जाते हैं, जो एक आरामदायक, जीवंत और हलचल भरे माहौल में मुंबई के प्रसिद्ध स्ट्रीट स्टॉलों की याद दिलाते हैं।
----------	---

Q.No: 14	Eight friends (A to H) are sitting around a circular table. B is third to the right of A. D is second to the left of B. C is not an immediate neighbor of A or D. F is sitting opposite to E. Who is sitting between G and H? आठ दोस्त (A से H) एक गोलाकार मेज के चारों ओर बैठे हैं। B, A के दाईं ओर तीसरा है। D, B के बाईं ओर दूसरा है। C, A या D का निकटतम पड़ोसी नहीं है। F, E के विपरीत बैठा है। G और H के बीच कौन बैठा है?
C	
C	
D	
D	
<input type="checkbox"/>	
<input type="checkbox"/>	
A	
A	

Q.No: 15	<p>In each of the following questions, two numbers are given which follow a certain logical or arithmetic relationship. Identify the same pattern and apply it to find the missing number in the second pair. Choose the correct option from the given alternatives.</p> <p>15 : 30 :: 25 : ?</p> <p>निम्नलिखित प्रत्येक प्रश्न में दो संख्याएँ दी गई हैं जो एक निश्चित तार्किक या अंकगणितीय संबंध का पालन करती हैं। उसी पैटर्न को पहचानिए और दूसरे जोड़े में लुप्त संख्या ज्ञात करने के लिए उसका प्रयोग कीजिए। दिए गए विकल्पों में से सही विकल्प चुनिए।</p> <p>15 : 30 :: 25 : ?</p>
40	
40	
35	
35	
45	
45	
50	
50	

Q.No: 16 **Input:** dance, apple, zebra, kite, fan, bottle
Step I: zebra, apple, dance, kite, fan, bottle
Step II: zebra, apple, bottle, dance, kite, fan
Step III: zebra, apple, bottle, dance, fan, kite
Question: What is the logic followed in the above arrangement?

इनपुट: नृत्य, सेब, ज़ेबरा, पतंग, पंखा, बोतल
चरण I: ज़ेबरा, सेब, नृत्य, पतंग, पंखा, बोतल
चरण II: ज़ेबरा, सेब, बोतल, नृत्य, पतंग, पंखा
चरण III: ज़ेबरा, सेब, बोतल, नृत्य, पंखा, पतंग
प्रश्न: उपरोक्त व्यवस्था में क्या तर्क अपनाया गया है?

Descending alphabetical order left to right

बाएँ से दाएँ अवरोही वर्णमाला क्रम

Alphabetical arrangement from right to left

दाएँ से बाएँ वर्णानुक्रमिक व्यवस्था

Largest word to left, smallest word to right in alternating steps

सबसे बड़ा शब्द बाईं ओर, सबसे छोटा शब्द बारी-बारी से दाईं ओर

Descending alphabetical order with one word rearranged in each step

प्रत्येक चरण में एक शब्द को पुनः व्यवस्थित करते हुए अवरोही वर्णमाला क्रम

Q.No: 17 **Scenario:**
 Karthik has the following profile:
 Education: B.Sc. with 64% and M.Sc. in Chemistry (passed)
 Experience: No teaching experience yet
 Age: 23 years
 Preference: Open to probationary roles
 Eligibility Criteria for the Position:
 Minimum Age: 24 years
 Maximum Age: 30 years
 Educational Qualification: At least M.Sc. in Chemistry
 Experience: Minimum 2 years in the relevant field
 Probationary Roles: Open to candidates with less than 5 years of experience
 Minimum Marks in B.Sc.: 65%

Decision:

Based on the provided information, what is the most appropriate decision regarding Karthik's eligibility for the position?

परिदृश्य:

कार्तिक की प्रोफाइल इस प्रकार है:

शिक्षा: 64% अंकों के साथ बी.एस.सी. और रसायन विज्ञान में एम.एस.सी. (उत्तीर्ण)

अनुभव: अभी तक कोई शिक्षण अनुभव नहीं

आयु: 23 वर्ष

वरीयता: परिवीक्षाधीन भूमिकाओं के लिए खुला

पद के लिए पात्रता मानदंड:

न्यूनतम आयु: 24 वर्ष

अधिकतम आयु: 30 वर्ष

शैक्षणिक योग्यता: रसायन विज्ञान में कम से कम एम.एस.सी.

अनुभव: संबंधित क्षेत्र में न्यूनतम 2 वर्ष

परिवीक्षाधीन भूमिकाएँ: 5 वर्ष से कम अनुभव वाले उम्मीदवारों के लिए खुला

बी.एस.सी. में न्यूनतम अंक: 65%

निर्णय:

प्रदान की गई जानकारी के आधार पर, पद के लिए कार्तिक की पात्रता के बारे में सबसे उपयुक्त निर्णय क्या है?

Candidate is to be selected

उम्मीदवार का चयन किया जाना है

Information is inadequate

जानकारी अपर्याप्त है

Candidate is not to be selected

उम्मीदवार का चयन नहीं किया जाना है

Case is to be referred to Principal

सामग्री प्रिंसिपल को भेजा जाना है

Q.No: 18	<p>If Roll numbers starting with 'A' are assigned to the Science stream, 'B' to the Commerce stream, and 'C' to the Arts stream, which of the following students belong to the commerce stream?</p> <p>अगर 'A' से शुरू होने वाले रोल नंबर को विज्ञान स्ट्रीम, 'B' को वाणिज्य स्ट्रीम और 'C' को कला स्ट्रीम को दिया गया है, तो निम्नलिखित में से कौन से छात्र वाणिज्य स्ट्रीम से संबंधित हैं?</p>
	B2745
	B2745
	A3572
	A3572
	C3489
	C3489
	A1258
	A1258

Q.No: 19	<p>In a row of 8 seats, how many ways can 3 people sit next to each other?</p> <p>8 सीटों की एक पंक्ति में, 3 लोग एक दूसरे के बगल में कितने तरीकों से बैठ सकते हैं?</p>
	72
	72
	36
	36
	48
	48
	54
	54

Q.No: 20	<p>Identify the number that is unlike the rest:</p> <p>उस संख्या को पहचानें जो बाकी से भिन्न है:</p>
	19
	19
	17
	17
	13
	13
	21
	21

Q.No: 21	<p>In each of these questions, a number series is given. In each series, only one number is wrong number. Find out the wrong number.</p> <p>4, 12, 42, 196, 1005, 6066, 42511.</p> <p>प्रत्येक प्रश्न में एक संख्या श्रृंखला दी गई है। प्रत्येक श्रृंखला में केवल एक संख्या गलत है। गलत संख्या ज्ञात कीजिए। 4, 12, 42, 196, 1005, 6066, 42511.</p>
	12
	12
	196
	196
	42
	42
	1005
	1005

Q.No: 22	<p>Meera has 70% in B.Sc., M.Sc. completed, 3 years Maths teaching experience, 25 years old, ready for probation. What should be done?</p> <p>मीरा के पास बीएससी में 70% अंक हैं, एमएससी पूरी हो चुकी है, 3 साल का गणित पढ़ाने का अनुभव है, 25 साल की है, प्रोबेशन के लिए तैयार है। क्या करना चाहिए?</p>
	Refer Meera to Vice Principal
	मीरा को उप प्राचार्य के पास भेजो
	Reject Meera
	मीरा को अस्वीकार करो

Select Meera directly

मीरा को सीधे चुनें

Refer Meera to Principal

मीरा को प्रिंसिपल के पास भेजो

Q.No: 23 Ravi walked 8 meters north, turned right and walked 6 meters, turned right again and walked 8 meters. In which direction is he now facing?

रवि 8 मीटर उत्तर की ओर चला, फिर दाएं मुड़ा और 6 मीटर चला, फिर दाएं मुड़ा और 8 मीटर चला। अब वह किस दिशा की ओर देख रहा है?

North

उत्तर

South

दक्षिण

East

पूर्व

West

पश्चिम

Q.No: 24 Ramu said, "She is the daughter of the only son of my grandfather." How is Ramu related to the girl?

रामू ने कहा, "वह मेरे दादा के इकलौते बेटे की बेटी है।" रामू का उस लड़की से क्या संबंध है?

Father

पिता

Cousin

चचेरा

Uncle

चाचा

Brother

भाई

Q.No: 25 If Neha is facing south and turns 90° to her left, then 180° to her right, and finally 90° to her left again, which direction is she facing now?

अगर नेहा दक्षिण की ओर मुँह करके खड़ी है और 90° बाईं ओर मुड़ती है, फिर 180° दाईं ओर मुड़ती है, और अंततः पुनः 90° बाईं ओर मुड़ती है, तो अब वह किस दिशा की ओर मुँह करके खड़ी है?

West

पश्चिम

North

उत्तर

South

दक्षिण

East

पूर्व

Q.No: 26 Fill in the blank: 6, 24, 60, 120, ____

रिक्त स्थान भरें: 6, 24, 60, 120, ____

170

170

210

210

110

110

200

200

Q.No: 27	<p>Four of the following five are alike in a certain way and hence form a group. Which is the one that does not belong to that group?</p> <p>1. BRISK : DTKUO 2. CLOUD : ENQUF 3. FLAME : HMCOC 4. GRANT : HVCRV 5. HOUSE : JQWUG</p> <p>निम्नलिखित पाँच में से चार एक निश्चित रूप से एक जैसे हैं और इसलिए एक समूह बनाते हैं। वह कौन सा है जो उस समूह से संबंधित नहीं है?</p> <p>1. BRISK : DTKUO 2. CLOUD : ENQUF 3. FLAME : HMCOC 4. GRANT : HVCRV 5. HOUSE : JQWUG</p>
	<p>FLAME : HMCOC</p> <p>FLAME : HMCOC</p> <p>CLOUD : ENQUF</p> <p>CLOUD : ENQUF</p> <p>GRANT : HVCRV</p> <p>GRANT : HVCRV</p> <p>BRISK : DTKUO</p> <p>BRISK : DTKUO</p>

Q.No: 28	<p>In a contest of 50 participants, if Amit is ranked 30th from the top and 21st from the bottom, what is the total number of participants in the contest?</p> <p>50 प्रतिभागियों की एक प्रतियोगिता में, यदि अमित शीर्ष से 30वें स्थान पर और नीचे से 21वें स्थान पर है, तो प्रतियोगिता में प्रतिभागियों की कुल संख्या कितनी है?</p>
	52
	52
	49
	49
	51
	51
	50
	50

Q.No: 29	<p>Six people A-F are sitting in a circle. A is second to the left of B. C is opposite A. D is between C and E. Who is to the immediate right of B?</p> <p>छह व्यक्ति A-F एक वृत्त में बैठे हैं। A, B के बाएं से दूसरे स्थान पर है। C, A के विपरीत है। D, C और E के बीच में है। B के ठीक दाएं कौन है?</p>
	F
	F
	D
	D
	A
	A

Q.No: 30	<p>A player holds 15 cards of four suits, of which eight are red and seven are black. The number of diamonds is twice the number of spades, and the number of hearts is equal to the number of diamonds. How many clubs does he hold?</p> <p>एक खिलाड़ी के पास चार सूट के 15 कार्ड हैं, जिनमें से आठ लाल और सात काले हैं। हीरे की संख्या हुकुम की संख्या से दोगुनी है, और दिल की संख्या हीरे की संख्या के बराबर है। उसके पास कितने क्लब हैं?</p>
	5
	5
	2
	2
	3
	3
	4
	4
	Not Answered

Q.No: 31	<p>In each of the following question, a pair of words (letter sequences) is given on the left-hand side of the double colon (::), which follows a certain alphabetical pattern. Identify the logic in the first pair and apply the same logic to the third word to find the correct corresponding word from the options.</p> <p>FOX : FPY :: JAR : ?</p> <p>निम्नलिखित प्रत्येक प्रश्न में, दोहरे कोलन (::) के बाईं ओर शब्दों का एक युग्म (अक्षर क्रम) दिया गया है, जो एक निश्चित वर्णमाला क्रम का अनुसरण करता है। पहले युग्म में तर्क पहचानिए और उसी तर्क को तीसरे शब्द पर लागू करके विकल्पों में से सही संगत शब्द ज्ञात कीजिए।</p> <p>FOX : FPY :: JAR : ?</p>
KCS	
KCS	
JBS	
JBS	
JAR	
JAR	
OEI	
OEI	

Q.No: 32	<p>Observe the following incomplete letter sequence carefully. A specific pattern governs the order and repetition of the letters. Choose the option that best fills the blanks to complete the sequence logically and symmetrically. ab_dcb_ab_dc_a</p> <p>निम्नलिखित अधूरी अक्षर श्रृंखला को ध्यान से देखें। अक्षरों के क्रम और पुनरावृत्ति को एक विशिष्ट पैटर्न नियंत्रित करता है। उस विकल्प को चुनें जो रिक्त स्थानों को तार्किक और सममित रूप से पूरा करने के लिए सबसे उपयुक्त है। ab_dcb_ab_dc_a</p>
cabc	
cabc	
ccab	
ccab	
caca	
caca	
cacb	
cacb	
Not Answered	

Q.No: 33	<p>In a 20 L mixture the ratio of juice to water is 3:2. How much juice is in the mixture?</p> <p>20 लीटर के मिश्रण में रस और पानी का अनुपात 3:2 है। मिश्रण में कितना रस है?</p>
10 L	
10 लीटर	
8 L	
8 लीटर	
12 L	
12 लीटर	
14 L	
14 लीटर	

Q.No: 34	<p>The sum of the ages of A and B is 46 years. Five years ago, the ratio of their ages was 4:5. What is B's current age?</p> <p>A और B की आयु का योग 46 वर्ष है। पाँच वर्ष पहले, उनकी आयु का अनुपात 4:5 था। B की वर्तमान आयु क्या है?</p>
21 years	
21 वर्ष	
20 years	
20 वर्ष	
24 years	
24 वर्ष	
25 years	
25 वर्ष	

Q.No: 35	<p>In a group of 20 people, Anil is ranked 5th from the top. What is his rank from the bottom?</p> <p>20 लोगों के एक समूह में अनिल शीर्ष से 5वें स्थान पर है। नीचे से उसका स्थान क्या है?</p>
----------	---

15th
15 वीं
17th
17 वीं
16th
16 वीं
14th
14 वीं

Q.No: 36	If $3x + y = 12$ and $x - y = 4$ what is the value of x ? यदि $3x + y = 12$ और $x - y = 4$ है तो x का मान क्या है?
2	
2	
4	
4	
6	
6	
8	
8	

Q.No: 37	Pointing to a woman, Ravi says, "She is the daughter of the only son of my father." How is the woman related to Ravi? एक महिला की ओर इशारा करते हुए रवि कहता है, "वह मेरे पिता के इकलौते बेटे की बेटी है।" वह महिला रवि से किस प्रकार संबंधित है?
Daughter	
बेटी	
Cousin	
चचेरा	
Uncle	
चाचा	
Brother	
भाई	

Q.No: 38	<p>Read the following statement carefully and identify the conclusion that follows.</p> <p>Statement: "Advertisements on social media have more reach than print media."</p> <p>Conclusions:</p> <p>I. Social media is more effective than print media for advertising.</p> <p>II. Print media is obsolete.</p> <p>निम्नलिखित कथन को ध्यान से पढ़ें और निष्कर्ष निकालें।</p> <p>कथन: "सोशल मीडिया पर विज्ञापनों की पहुंच प्रिंट मीडिया से ज्यादा है।"</p> <p>निष्कर्ष:</p> <p>I. विज्ञापन के लिए सोशल मीडिया प्रिंट मीडिया से ज्यादा प्रभावी है।</p> <p>II. प्रिंट मीडिया अप्रचलित है।</p>
Only conclusion I follows	
केवल निष्कर्ष I अनुसरण करता है	
Neither conclusion I nor II follows	
न तो निष्कर्ष I और न ही II अनुसरण करता है	
Both conclusions I and II follow	
दोनों निष्कर्ष I और II अनुसरण करते हैं	
Only conclusion II follows	
केवल निष्कर्ष II अनुसरण करता है	

Q.No: 39	In each of the following questions, a specific relationship is given between two words. Identify the word that shares a similar semantic relationship with the given pair. Choose the most appropriate option from the four choices given below. Surgeon : Scalpel :: Sculptor : ? निम्नलिखित प्रत्येक प्रश्न में दो शब्दों के बीच एक विशिष्ट संबंध दिया गया है। उस शब्द की पहचान कीजिए जो दिए गए युग्म के साथ समान अर्थ संबंध साझा करता है। नीचे दिए गए चार विकल्पों में से सबसे उपयुक्त विकल्प चुनिए। शल्यचिकित्सक : छुरी :: मूर्तिकार : ?
----------	---

Chise

छिनी

Plaster

प्लास्टर

Brush

ब्रश

Hammer

हथौड़ा

Q.No: 40

Find the ODD one out.

विषम चुनें।

Cube

घन

Sphere

गोला

Cylinder

सिलेंडर

Cone

शंकु

Q.No: 41

Which of the following conclusions can be logically drawn from the statement?

"All apples are fruits. Some fruits are sour."

कथन से तार्किक रूप से निम्नलिखित में से कौन सा निष्कर्ष निकाला जा सकता है?

"सभी सेब फल हैं। कुछ फल खट्टे हैं।"

Some fruits may not be apples.

कुछ फल सेब नहीं भी हो सकते हैं।

Some apples are not fruits.

कुछ सेब फल नहीं हैं।

All sour things are fruits.

सभी खट्टी चीजें फल हैं।

All apples are sour.

सभी सेब खट्टे हैं।

Q.No: 42

In a certain code, "GAME" is written as "ICOG". How will "PLAY" be written in the same code?

एक निश्चित कोड में, "GAME" को "ICOG" लिखा जाता है। उसी कोड में "PLAY" को कैसे लिखा जाएगा?

RNCA

RNCA

RODC

RODC

RNDC

RNDC

RNDA

RNDA

Q.No: 43

Input: blue 42 rose 71 violet 13 orange

Which of the following would be Step 3 if the logic is:

Step 1: Alphabetical arrangement of words from left

Step 2: Numbers arranged in descending order from the end?

इनपुट: blue 42 rose 71 violet 13 orange

निम्नलिखित में से कौन सा चरण 3 होगा अगर तर्क यह है:

चरण 1: शब्दों की बाईं ओर से वर्णमाला क्रम में व्यवस्था

चरण 2: अंत से अवरोही क्रम में व्यवस्थित संख्याएँ?

Blue orange rose violet 42 71 13

Blue orange rose violet 42 71 13

Blue orange rose violet 71 42 13

Blue orange rose violet 71 42 13

Blue orange rose violet 71 13 42

Blue orange rose violet 71 13 42

Orange violet rose blue 71 42 13

Orange violet rose blue 71 42 13

Q.No: 44 A shop sells pens at INR 10 each and notebooks at INR 40 each. After a 10% discount on notebooks. A customer buys 3 pens and 2 notebooks. What is the total cost?
एक दुकान 10 रुपये प्रति पेन और 40 रुपये प्रति नोटबुक बेचती है। नोटबुक पर 10% की छूट के बाद, एक ग्राहक 3 पेन और 2 नोटबुक खरीदता है। कुल लागत क्या है?

INR 96

96 रुपये

INR 108

108 रुपये

INR 114

114 रुपये

INR 102

102 रुपये

Q.No: 45 Find the next term in the given letter series: ZZPQPQPQ, PZZPQPQP, PQZZPQPQ, PQPZZPQP, PQPQZZPQ, _____.
दी गई अक्षर श्रृंखला में अगला पद ज्ञात कीजिए: ZZPQPQPQ, PZZPQPQP, PQZZPQPQ, PQPZZPQP, PQPQZZPQ, _____.

PQPQPZZP

PQPQPZZP

PQPQZZPQ

PQPQZZPQ

ZZPQPQPQ

ZZPQPQPQ

PZZPQPQP

PZZPQPQP

Q.No: 46 What number will be present in place of the question mark?: 4, 18, 48, 100, 180, ?

प्रश्नवाचक चिन्ह के स्थान पर कौन सी संख्या आएगी?: 4, 18, 48, 100, 180, ?

294

294

254

254

374

374

374

374

Q.No: 47 Four of the following five are alike in a certain way and hence form a group. Which is the one that does not belong to that group?

- A. F H J L
- B. K M O Q
- C. P R T V
- D. A C E D
- E. W Y A C

निम्नलिखित पाँच में से चार एक निश्चित रूप से एक जैसे हैं और इसलिए एक समूह बनाते हैं। वह कौन सा है जो उस समूह से संबंधित नहीं है?

- A. F H J L
- B. K M O Q
- C. P R T V
- D. A C E D
- E. W Y A C

A C E D

A C E D

F H J L
F H J L
P R T V
P R T V
K M O Q
K M O Q

Q.No: 48	<p>Input: 85 kite 23 lamp 62 brush Step 1: brush 85 kite 23 lamp 62 Step 2: brush 85 kite 62 23 lamp Step 3: brush 85 kite 62 lamp 23</p> <p>Which of the following describes the logic best?</p> <p>इनपुट: 85 kite 23 lamp 62 brush चरण 1: brush 85 kite 23 lamp 62 चरण 2: brush 85 kite 62 23 lamp चरण 3: brush 85 kite 62 lamp 23</p> <p>निम्नलिखित में से कौन सा तर्क सबसे अच्छा वर्णन करता है?</p>
	Placing smallest word first; largest number second
	सबसे छोटा शब्द पहले रखना; सबसे बड़ी संख्या दूसरे स्थान पर रखना
	Placing words alphabetically from left and numbers in descending order
	शब्दों को बाएं से वर्णानुक्रम में तथा संख्याओं को अवरोही क्रम में रखना
	Words on odd positions and numbers on even positions
	विषम स्थानों पर शब्द तथा सम स्थानों पर संख्याएँ
	Alphabetically placing words from start; numbers in increasing order from end
	शब्दों को शुरू से वर्णानुक्रम में रखना; संख्याओं को अंत से बढ़ते क्रम में रखना

Q.No: 49	<p>Read the following statement carefully and identify the conclusion that follows. Statements: All flowers are trees. Some trees are plants. Conclusions: I. Some flowers are plants. II. All flowers are plants.</p> <p>निम्नलिखित कथन को ध्यान से पढ़ें और निष्कर्ष निकालें। कथन: सभी फूल पेड़ हैं। कुछ पेड़ पौधे हैं। निष्कर्ष: I. कुछ फूल पौधे हैं। II. सभी फूल पौधे हैं।</p>
	Neither I nor II follows
	न तो I और न ही II अनुसरण करता है
	Both I and II follow
	I और II दोनों अनुसरण करते हैं
	Only Conclusion I follows
	केवल निष्कर्ष I अनुसरण करता है
	Only Conclusion II follows
	केवल निष्कर्ष II अनुसरण करता है

Q.No: 50	<p>P, Q, R, S, T, and U are sitting in a row. Q is to the right of P but left of R. T is to the right of R but left of U. Who is exactly in the middle?</p> <p>P, Q, R, S, T और U एक पंक्ति में बैठे हैं। Q, P के दाईं ओर है लेकिन R के बाईं ओर है। T, R के दाईं ओर है लेकिन U के बाईं ओर है। ठीक बीच में कौन है?</p>
	R
	Q
	Q
	S
	S
	T
	T

PART - B (General Awareness)

Q.No: 51 Consider the following two statements, labeled Assertion (A) and Reason (R). Evaluate them and choose the appropriate answer from the given options.
Assertion (A): India's participation in the Asian Winter Games 2025 will be unique, as it will be the first time the government has provided full financial support.
Reason (R): The government's objective is to enhance India's presence and performance in winter sports by ensuring fair and meritocratic athlete selection.
अभिकथन (A) और कारण (R) से चिह्नित निम्नलिखित दो कथनों पर विचार करें। उनका मूल्यांकन करें और दिए गए विकल्पों में से उचित उत्तर चुनें।
अभिकथन (A): एशियाई शीतकालीन खेलों 2025 में भारत की भागीदारी अद्वितीय होगी, क्योंकि यह पहली बार होगा जब सरकार ने पूर्ण वित्तीय सहायता प्रदान की है।
कारण (R): सरकार का उद्देश्य निष्पक्ष और योग्यता आधारित एथलीट चयन सुनिश्चित करके शीतकालीन खेलों में भारत की उपस्थिति और प्रदर्शन को बढ़ाना है।

A is true, but R is false.

A सत्य है, लेकिन R असत्य है।

A is false, but R is true.

A असत्य है, लेकिन R सत्य है।

Both A and R are true, but R is not the correct explanation of A.

A और R दोनों सत्य हैं, लेकिन R, A का सही स्पष्टीकरण नहीं है।

Both A and R are true, and R is the correct explanation of A.

A और R दोनों सत्य हैं, तथा R, A का सही स्पष्टीकरण है।

Not Answered

Q.No: 52 The Nehru Cup, a prominent international football tournament in India, was last held in which year?
भारत में प्रमुख अंतरराष्ट्रीय फुटबॉल टूर्नामेंट नेहरू कप आखिरी बार किस वर्ष आयोजित किया गया था?

2007

2007

2012

2012

2015

2015

2018

2018

Q.No: 53 What are the streams of charged particles ejected by the Sun into space called?
सूर्य द्वारा अंतरिक्ष में छोड़े गए आवेशित कणों की धाराओं को क्या कहा जाता है?

Sunspots

सूर्य के धब्बे

Solar wind

सौर हवा

Solar flares

सौर ज्वालाएँ

Coronal loops

कोरोनल लूप

Q.No: 54 In which state is the folk music tradition of "Zikir" popular?
"ज़िकिर" लोक संगीत परंपरा किस राज्य में लोकप्रिय है?

Assam

असम

Gujarat

गुजरात
Odisha
ओडिशा
Rajasthan
राजस्थान
Not Answered

Q.No: 55	Which countries are members of BIMSTEC? बिम्स्टेक(BIMSTEC) के सदस्य कौन से देश हैं?
Bangladesh, Bhutan, India, Pakistan, Nepal, Sri Lanka, Thailand	
बांग्लादेश, भूटान, भारत, पाकिस्तान, नेपाल, श्रीलंका, थाईलैंड	
Bangladesh, Bhutan, India, Myanmar, Maldives, Sri Lanka, Thailand	
बांग्लादेश, भूटान, भारत, म्यांमार, मालदीव, श्रीलंका, थाईलैंड	
Bangladesh, Bhutan, India, Myanmar, Nepal, Sri Lanka, Thailand	
बांग्लादेश, भूटान, भारत, म्यांमार, नेपाल, श्रीलंका, थाईलैंड	
Afghanistan, Bangladesh, Bhutan, India, Maldives, Nepal, Pakistan, Sri Lanka	
अफ़गानिस्तान, बांग्लादेश, भूटान, भारत, मालदीव, नेपाल, पाकिस्तान, श्रीलंका	

Q.No: 56	Which of the following is considered the oldest known civilization of the Indian subcontinent? निम्न में से कौन-सी भारतीय उपमहाद्वीप की प्राचीनतम ज्ञात सभ्यता मानी जाती है?
Gupta Empire	
गुप्त साम्राज्य	
Maurya Civilization	
मौर्य सभ्यता	
Indus Valley Civilization	
सिंधु घाटी सभ्यता	
Vedic Civilization	
वैदिक सभ्यता	

Q.No: 57	Which of the following was a major effect of the 42nd Constitutional Amendment? निम्नलिखित में से 42वें संविधान संशोधन का प्रमुख प्रभाव कौन सा था?
It abolished the Directive Principles of State Policy. इसने राज्य नीति के निर्देशक सिद्धांतों को समाप्त कर दिया।	
It increased the tenure of the Lok Sabha and introduced Fundamental Duties इसने लोकसभा का कार्यकाल बढ़ाया और मौलिक कर्तव्यों को पेश किया	
It introduced Fundamental Rights for citizens. इसने नागरिकों के लिए मौलिक अधिकारों की शुरुआत की।	
It reduced the term of the Lok Sabha to four years इसने लोक सभा का कार्यकाल घटाकर चार वर्ष कर दिया	

Q.No: 58	What shape does a population pyramid take for a rapidly growing population? तीव्र गति से बढ़ती जनसंख्या के लिए जनसंख्या पिरामिड किस आकार का होता है?
Inverted triangle shape	
उल्टे त्रिभुज के आकार की संरचना	
Circular shape	
वृत्तीय आकार	
Triangular shape	
त्रिकोणीय आकार	
Rectangular shape	
आयताकार आकृति	

Q.No: 59	Which of the following is not a Maharatna company as of 2024? निम्नलिखित में से कौन 2024 तक महारत्न कंपनी नहीं है?
Hindustan Copper Limited	
हिंदुस्तान कॉपर लिमिटेड	
National Thermal Power Corporation Limited	
राष्ट्रीय थर्मल पावर कॉर्पोरेशन लिमिटेड	
Oil & Natural Gas Corporation Limited	
तेल एवं प्राकृतिक गैस निगम लिमिटेड	
Steel Authority of India Limited	
स्टील अथॉरिटी ऑफ इंडिया लिमिटेड	

Q.No: 60	What was the recommendation regarding entry of foreign banks in India? भारत में विदेशी बैंकों के प्रवेश को लेकर समिति ने क्या सिफारिश की थी?
Allow foreign banks to operate freely	
विदेशी बैंकों को स्वतंत्र रूप से कार्य करने की अनुमति देना	
Restrict foreign banks to urban areas	
विदेशी बैंकों को केवल शहरी क्षेत्रों तक सीमित रखना	
Ban foreign banks in India	
भारत में विदेशी बैंकों पर प्रतिबंध लगाना	
Encourage foreign banks to expand operations in India	
विदेशी बैंकों को भारत में विस्तार हेतु प्रोत्साहित करना	

Q.No: 61	Which constitutional amendment is known as the "Mini Constitution"? कौन-सा संवैधानिक संशोधन "लघु संविधान" (Mini Constitution) के रूप में जाना जाता है?
52nd Amendment	
52वां संविधान संशोधन	
44th Amendment	
44वां संविधान संशोधन	
42nd Amendment	
42वां संशोधन	
24th Amendment	
24वां संशोधन	

Q.No: 62	Which of the following statement(s) is/are correct regarding the Bharatiya Nyaya Sanhita (BNS)? 1. The Bharatiya Nyaya Sanhita introduces community service as a punishment for minor offences. 2. The scope of summary trials has been limited to only serious offences under the new law. 3. The reformatory approach aims to ensure societal reintegration of offenders. भारतीय न्याय संहिता (बीएनएस) के संबंध में निम्नलिखित में से कौन सा कथन सही है? 1. भारतीय न्याय संहिता में छोटे-मोटे अपराधों के लिए सामुदायिक सेवा को दंड के रूप में पेश किया गया है। 2. नए कानून के तहत संक्षिप्त सुनवाई का दायरा केवल गंभीर अपराधों तक सीमित कर दिया गया है। 3. सुधारात्मक दृष्टिकोण का उद्देश्य अपराधियों का सामाजिक एकीकरण सुनिश्चित करना है।
1 and 2 only	
केवल 1 और 2	
1 and 3 only	
केवल 1 और 3	
2 and 3 only	
केवल 2 और 3	
1,2, and 3 all are correct	
1,2, और 3 सभी सही हैं	

Q.No: 63	The cell uses internal compartmentalization to manage its complexity. Which of the following best reflects this idea? कोशिका अपनी जटिलता को प्रबंधित करने के लिए आंतरिक विभाजन का उपयोग करती है। निम्नलिखित में से कौन सा इस विचार को सबसे अच्छी तरह से दर्शाता है?
----------	--

Organelles in eukaryotic cells float freely without any specific role.

यूकेरियोटिक कोशिकाओं में कोशिकांग बिना किसी विशिष्ट भूमिका के स्वतंत्र रूप से तैरते रहते हैं।

Prokaryotic cells use multiple membranes to isolate cell activities.

प्रोकैरियोटिक कोशिकाएं कोशिका गतिविधियों को अलग करने के लिए अनेक झिल्लियों का उपयोग करती हैं।

Eukaryotic cells have membrane-bound organelles that separate different functions

यूकेरियोटिक कोशिकाओं में झिल्ली से बंधे अंगक होते हैं जो विभिन्न कार्यों को अलग करते हैं

All cellular functions occur in the same space without any separation.

सभी कोशिकीय कार्य बिना किसी पृथक्करण के एक ही स्थान पर होते हैं।

Q.No: 64 What was the key scientific objective of Chandrayaan-3?

चंद्रयान-3 का प्रमुख वैज्ञानिक उद्देश्य क्या था?

To demonstrate a safe lunar landing and rover operation

चंद्रमा पर सुरक्षित लैंडिंग और रोवर संचालन का प्रदर्शन करना

To study Mars' atmosphere

मंगल ग्रह के वायुमंडल का अध्ययन करना

To measure gravitational waves

गुरुत्वीय तरंगों का मापन करना

To orbit the Moon

चंद्रमा की कक्षा में घूमना

Q.No: 65 Which of the following plateaus is located in the northeastern part of India?

निम्नलिखित में से कौन-सा पठार भारत के पूर्वोत्तर भाग में स्थित है?

Malwa Plateau

मालवा पठार

Deccan Plateau

दक्कन पठार

Chota Nagpur Plateau

छोटा नागपुर पठार

Shillong Plateau

शिलाँग पठार

Q.No: 66 Which of these is not a feature of Indian federalism?

निम्नलिखित में से कौन-सा भारतीय संघवाद की विशेषता नहीं है?

Independent Judiciary

स्वतंत्र न्यायपालिका

Written Constitution

लिखित संविधान

Dual Citizenship

दोहरी नागरिकता

Division of Powers

शक्तियों का विभाजन

Q.No: 67 Which of the following statements is NOT TRUE about Rash Behari Bose?

रास बिहारी बोस के बारे में निम्नलिखित में से कौन सा कथन सही नहीं है?

He founded Indian Independence League in Tokyo in 1942.

उन्होंने 1942 में टोक्यो में भारतीय स्वतंत्रता लीग की स्थापना की।

He was an important figure in the Ghadar Movement and in the formation of the Azad Hind Fauj.

वह गदर आंदोलन और आज़ाद हिंद फौज के गठन में एक महत्वपूर्ण व्यक्ति थे।

He was honoured with the prestigious title 'Order of the rising sun'.

उन्हें प्रतिष्ठित उपाधि 'ऑर्डर ऑफ द राइजिंग सन' से सम्मानित किया गया।

He was independent India's first Commander-in-Chief of Indian Army.

Q.No: 68	At what orientation does a rotating coil in a uniform magnetic field generate the maximum induced EMF? एकसमान चुंबकीय क्षेत्र में घूर्णन करती हुई कुंडली किस अभिविन्यास पर अधिकतम प्रेरित EMF उत्पन्न करती है?
	When the coil's plane is at 45° to the magnetic field lines जब कुंडली का तल चुंबकीय क्षेत्र रेखाओं से 45° पर होता है
	When the magnetic flux through the coil is maximum जब कुंडली के माध्यम से चुंबकीय प्रवाह अधिकतम होता है
	When the coil's plane is perpendicular (90°) to the magnetic field lines जब कुंडली का तल चुंबकीय क्षेत्र रेखाओं के लंबवत (90°) होता है
	When the coil's plane is parallel to the magnetic field lines जब कुंडली का तल चुंबकीय क्षेत्र रेखाओं के समानांतर होता है
	Not Answered

Q.No: 69	Which of the following statements based on the Union List entries is/are correct? 1.The Parliament has exclusive power to legislate on lotteries conducted by both the Central and State governments. 2.Matters related to the incorporation and regulation of cooperative societies are included in the Union List. 3.The Reserve Bank of India, foreign exchange, and currency are all under the legislative domain of the Union. 4.Parliament can make laws regarding corporations whose activities are not limited to one State, excluding universities. संघ सूची प्रविष्टियों पर आधारित निम्नलिखित में से कौन सा कथन सही है/हैं? 1. संसद के पास केंद्र और राज्य सरकारों द्वारा आयोजित लॉटरी पर कानून बनाने का विशेष अधिकार है। 2. सहकारी समितियों के निगमन और विनियमन से संबंधित मामले संघ सूची में शामिल हैं। 3. भारतीय रिजर्व बैंक, विदेशी मुद्रा और मुद्रा सभी संघ के विधायी क्षेत्राधिकार के अंतर्गत आते हैं। 4. संसद उन निगमों के बारे में कानून बना सकती है जिनकी गतिविधियाँ विश्वविद्यालयों को छोड़कर एक राज्य तक सीमित नहीं हैं।
	Only 1, 3, and 4 केवल 1, 3, और 4
	Only 2 and 3 केवल 2 और 3
	Only 1 and 4 केवल 1 और 4
	All four statements 1,2,3 and 4 are correct सभी चार कथन 1,2,3 और 4 सही हैं

Q.No: 70	Which Indian-American author wrote The Namesake, later adapted into a film? किस भारतीय-अमेरिकी लेखक ने द नेमसेक लिखी, जिसे बाद में फिल्म में रूपांतरित किया गया?
	Kiran Desai किरण देसाई
	Jhumpa Lahiri झुम्पा लाहिरी
	Arundhati Roy अरुंधति रॉय
	Chetan Bhagat चेतन भगत

Q.No: 71	Who became Indian Navy's first woman fighter pilot streamer on 3 July 2025? 3 जुलाई 2025 को भारतीय नौसेना की पहली महिला फाइटर पायलट स्ट्रीमर कौन बनीं?
	Bina Kumar बीना कुमारी
	Vidya Singh विद्या सिंह
	Neha Sharma

नेहा शर्मा

Aastha Poonia

आस्था पूनिया

Q.No: 72 What does the term "checkmate" refer to in chess?

शतरंज में "चेकमेट" शब्द का क्या तात्पर्य होता है?

End of game

खेल का समापन

Invalid move

अवैध चाल

A draw

बराबरी का स्कोर (ड्रॉ)

A win

जीत

Q.No: 73 Which of the following pairs is **correctly** matched?

निम्नलिखित में से कौन सा युग्म **सही** सुमेलित है?

Plasmolysis – Gain of water by plant cell

प्लास्मोलिसिस - पौधे की कोशिका द्वारा पानी का लाभ

Cell wall – Composed mainly of protein

कोशिका भित्ति - मुख्य रूप से प्रोटीन से बनी होती है

Cellulose – Provides structural strength to plant cells

सेल्यूलोज - पौधों की कोशिकाओं को संरचनात्मक शक्ति प्रदान करता है

Plasma membrane – Located outside the cell wall

प्लाज्मा झिल्ली - कोशिका भित्ति के बाहर स्थित होती है

Q.No: 74 Given below are the Assertion and Reason, choose the correct options regarding both the statements.

Assertion (A): Seasonal agricultural practices, such as stubble burning, have no significant impact on AQI levels in India.

Reason (R): Stubble burning is a controlled practice that doesn't release substantial pollutants into the atmosphere.

नीचे कथन और कारण दिए गए हैं, दोनों कथनों के संबंध में सही विकल्प चुनें।

कथन (A): पराली जलाने जैसी मौसमी कृषि पद्धतियों का भारत में AQI स्तरों पर कोई महत्वपूर्ण प्रभाव नहीं पड़ता है।

कारण (R): पराली जलाना एक नियंत्रित प्रथा है जो वायुमंडल में पर्याप्त प्रदूषक नहीं छोड़ती है।

A is true, but R is false.

A सत्य है, लेकिन R असत्य है।

Both A and R are true, but R is not the correct explanation of A.

A और R दोनों सत्य हैं, लेकिन R, A का सही स्पष्टीकरण नहीं है।

A is false, but R is true.

A असत्य है, लेकिन R सत्य है।

Both A and R are true, and R is the correct explanation of A.

A और R दोनों सत्य हैं, तथा R, A का सही स्पष्टीकरण है।

Q.No: 75 The concept of "opportunity cost" in economics refers to:

अर्थशास्त्र में "अवसर लागत" की अवधारणा से तात्पर्य है:

The value of the next best alternative forgone when a choice is made.

जब कोई चुनाव किया जाता है तो अगले सर्वोत्तम विकल्प का मूल्य त्याग दिया जाता है।

The cost incurred in the past that cannot be recovered.

अतीत में हुई वह लागत जिसकी भरपाई नहीं की जा सकती।

The cost of all alternatives that are not chosen.

उन सभी विकल्पों की लागत जिन्हें नहीं चुना गया है।

The monetary cost of the most expensive alternative.

सबसे महंगे विकल्प की मौद्रिक लागत।

Q.No: 76	Which confederation of Sultanates defeated the Vijayanagara Empire in the Battle of Talikota? तालिकोटा युद्ध में विजयनगर साम्राज्य को पराजित करने वाले सल्तनतों के संघ का नाम क्या था?
Rajput Confederacy	
राजपूत संघ	
Mughal Empire	
मुगल साम्राज्य	
Bahmani Sultanate	
बहमनी सल्तनत	
Deccan Sultanates	
दक्कन सल्तनतें	

Q.No: 77	What is the purpose of the two-day Hands-on Training Workshop on the e-SAKSHI Portal held in June 2024? जून 2024 में ई-साक्षी पोर्टल पर आयोजित दो दिवसीय व्यावहारिक प्रशिक्षण कार्यशाला का उद्देश्य क्या है?
To demonstrate biometric tracking of MPLAD assets	
एमपीएलएडी परिसंपत्तियों की बायोमेट्रिक ट्रैकिंग का प्रदर्शन करना	
To train officials on the revised fund flow procedure under MPLAD Scheme	
एमपीलैड योजना के अंतर्गत संशोधित निधि प्रवाह प्रक्रिया पर अधिकारियों को प्रशिक्षित करना	
To launch a new e-commerce platform for district development	
जिला विकास के लिए एक नया ई-कॉमर्स प्लेटफॉर्म लॉन्च करना	
To train MPs in drafting local development plans	
स्थानीय विकास योजनाओं का मसौदा तैयार करने में सांसदों को प्रशिक्षित करना	
Not Answered	

Q.No: 78	Which of the following is a characteristic feature of the Western Coastal Plains? निम्नलिखित में से कौन-सी विशेषता पश्चिमी तटीय मैदानों की पहचान है?
Mangrove forests	
मैन्ग्रोव वन	
High rainfall	
अधिक वर्षा	
Large deltas	
विशाल डेल्टा क्षेत्र	
Lagoons and backwaters	
लैगून और बैकवाटर	

Q.No: 79	Which temple, built by the Chandela dynasty in the 10th-11th centuries, is known for its exquisite sculptures? 10वीं-11वीं शताब्दी में चंदेला राजवंश द्वारा निर्मित कौन सा मंदिर अपनी उत्कृष्ट मूर्तियों के लिए जाना जाता है?
Kandariya Mahadeva Temple	
कंदारिया महादेव मंदिर	
Brihadeeswarar Temple	
बृहदेश्वर मंदिर	
Sun Temple, Modhera	
सूर्य मंदिर, मोढेरा	
Lingaraja Temple	
लिंगराज मंदिर	

Q.No: 80	In which year did UNESCO recognize Durga Puja as an Intangible Cultural Heritage? यूनेस्को ने किस वर्ष दुर्गा पूजा को अमूर्त सांस्कृतिक विरासत के रूप में मान्यता दी?
2023	
2023	

2015
2015
2019
2019
2021
2021

Q.No: 81	Which Indian state was the first to benefit from the Green Revolution? भारत में 'हरित क्रांति' का सर्वप्रथम लाभ किस राज्य को प्राप्त हुआ था?
Haryana	
हरियाणा	
Uttar Pradesh	
उत्तर प्रदेश	
Rajasthan	
राजस्थान	
Punjab	
पंजाब	

Q.No: 82	<p>Which of the following statements is/are correct?</p> <p>Statement I: A bank's main liability is the deposits it holds.</p> <p>Statement II: Open Market Operations involve buying and selling government bonds.</p> <p>Statement III: The Bank Rate is the rate at which RBI lends to commercial banks.</p> <p>निम्नलिखित में से कौन सा कथन सही है/हैं?</p> <p>कथन I: बैंक का मुख्य दायित्व उसके द्वारा रखी गई जमा राशि है।</p> <p>कथन II: खुले बाजार परिचालन में सरकारी बॉन्ड खरीदना और बेचना शामिल है।</p> <p>कथन III: बैंक दर वह दर है जिस पर RBI वाणिज्यिक बैंकों को उधार देता है।</p>
Only Statement III is correct	
केवल कथन III सही है	
I, II and III all three statements are correct	
I, II और III तीनों कथन सही हैं	
Only Statements I and II are correct	
केवल कथन I और II सही हैं	
Only Statements II and III are correct	
केवल कथन II और III सही हैं	

Q.No: 83	Kathak is a classical dance form that developed in which region of India? कथक शास्त्रीय नृत्य शैली भारत के किस क्षेत्र में विकसित हुई?
Southern India	
दक्षिण भारत	
Northern India	
उत्तरी भारत	
Eastern India	
पूर्वी भारत	
Western India	
पश्चिमी भारत	

Q.No: 84	Which government body was responsible for implementing the Technology Mission on Oilseeds? तेल बीज प्रौद्योगिकी मिशन को लागू करने की जिम्मेदारी किस सरकारी संस्था को सौंपी गई थी?
Ministry of Defense	
रक्षा मंत्रालय	
Ministry of Commerce	
वाणिज्य मंत्रालय	
Ministry of Education	
शिक्षा मंत्रालय	

Q.No: 85 Read the statements given below:

Statement 1: The Constitution of India divides the legislative subjects into 3 lists, namely the Centre, State and Concurrent List.**Statement 2:** The subject of 'Protection of wild animals and birds' is transferred to the Concurrent list from the State list by the 42nd Amendment Act**Statement 3:** Only the Parliament of India can make laws on the subjects under the Concurrent List.

Which of the following statements given above is/are correct?

नीचे दिए गए कथनों को पढ़ें:

कथन 1: भारत का संविधान विधायी विषयों को 3 सूचियों में विभाजित करता है, अर्थात् केंद्र, राज्य और समवर्ती सूची।

कथन 2: 'जंगली जानवरों और पक्षियों के संरक्षण' के विषय को 42वें संशोधन अधिनियम द्वारा राज्य सूची से समवर्ती सूची में स्थानांतरित किया गया है

कथन 3: केवल भारत की संसद ही समवर्ती सूची के तहत विषयों पर कानून बना सकती है।

ऊपर दिए गए निम्नलिखित कथनों में से कौन सा सही है/हैं?

Only Statements 1 and 3 are correct

केवल कथन 1 और 3 सही हैं

All three statements 1,2 and 3 are correct

सभी तीन कथन 1,2 और 3 सही हैं

Only Statement 2 is correct

केवल कथन 2 सही है

Only Statements 1 and 2 are correct

केवल कथन 1 और 2 सही हैं

Q.No: 86 Which Pratihara ruler successfully repelled Arab invasions in North-Western India?

उत्तर-पश्चिम भारत में अरब आक्रमणों को सफलतापूर्वक विफल करने वाले प्रतिहार शासक कौन थे?

Mihira Bhoja

मिहिर भोज

Nagabhata I

नागभट्ट प्रथम

Rajyapala

राज्यपाल

Vatsaraja

वत्सराज

Q.No: 87 Which of the following phenomena occurs when a wave passes through a narrow slit?

जब कोई तरंग किसी संकीर्ण छिद्र से गुजरती है तो निम्नलिखित में से कौन सी घटना घटित होती है?

Refraction

अपवर्तन

Reflection

प्रतिबिंब

Absorption

अवशोषण

Diffraction

विवर्तन

Q.No: 88 What is the primary purpose of the Insolvency and Bankruptcy Code (IBC), 2016?

दिवाला और ऋण शोधन संहिता (IBC), 2016 का प्रमुख उद्देश्य क्या है?

To regulate stock market investments

शेयर बाजार निवेश को नियंत्रित करना

To promote foreign direct investment

प्रत्यक्ष विदेशी निवेश को प्रोत्साहित करना

To simplify the process of resolving financial distress in businesses

व्यवसायों में वित्तीय संकट के समाधान की प्रक्रिया को सरल बनाना

To provide protection for startups from financial harassment

स्टार्टअप को वित्तीय शोषण से संरक्षण देना

Q.No: 89 Which AQI range corresponds to "Unhealthy for Sensitive Groups"?

कौन सी AQI श्रेणी "संवेदनशील समूहों के लिए अस्वास्थ्यकर" से मेल खाती है?

101-150

101-150

151-203

151-203

0-50

0-50

51-100

51-100

Q.No: 90 India's primary interest in developing Chabahar Port is to:

चाबहार बंदरगाह के विकास में भारत की प्राथमिक रुचि है:

Establish a direct naval base for military operations in the Persian Gulf.

फ़ारस की खाड़ी में सैन्य अभियानों के लिए एक प्रत्यक्ष नौसैनिक अड्डा स्थापित करना।

Gain direct access to Afghanistan and Central Asia, bypassing Pakistan.

पाकिस्तान को दरकिनार करते हुए अफगानिस्तान और मध्य एशिया तक सीधी पहुंच प्राप्त करना।

Develop a new tourism hub for its citizens.

अपने नागरिकों के लिए एक नया पर्यटन केंद्र विकसित करना।

Export agricultural products exclusively to Iran.

कृषि उत्पादों का निर्यात करना, विशेष रूप से ईरान को।

Not Answered

Q.No: 91 The Aspirational Districts Programme (ADP) focuses on:

आकांक्षी जिला कार्यक्रम (एडीपी) निम्नलिखित पर केंद्रित है:

Developing industrial clusters in backward regions

पिछड़े क्षेत्रों में औद्योगिक क्लस्टरों का विकास करना

Providing subsidies to small-scale industries

लघु उद्योगों को सब्सिडी प्रदान करना

Improving governance in urban areas

शहरी क्षेत्रों में प्रशासन में सुधार करना

Enhancing development in underdeveloped districts

अविकसित जिलों में विकास को बढ़ावा देना

Q.No: 92 Given below are two statements marked as Assertion (A) and Reason (R). Read and mark the correct options:

Assertion (A):

The Bharatiya Nagarik Suraksha Sanhita, 2023, promotes e-filing and virtual trials to expedite the justice delivery system.

Reason (R):

The integration of technology aims to reduce case pendency and enhance accessibility to justice.

नीचे दो कथन दिए गए हैं, जिन्हें अभिकथन (A) और कारण (R) के रूप में चिह्नित किया गया है। सही विकल्पों को पढ़ें और चिह्नित करें:

अभिकथन (A):

भारतीय नागरिक सुरक्षा संहिता, 2023, न्याय वितरण प्रणाली में तेजी लाने के लिए ई-फाइलिंग और वर्चुअल ट्रायल को बढ़ावा देती है।

कारण (R):

प्रौद्योगिकी के एकीकरण का उद्देश्य लंबित मामलों को कम करना और न्याय तक पहुँच को बढ़ाना है।

Both A and R are true, and R is the correct explanation of A.

A और R दोनों सत्य हैं, तथा R, A का सही स्पष्टीकरण है।

A is false, but R is true.

A असत्य है, लेकिन R सत्य है।

Both A and R are true, but R is not the correct explanation of A.

A और R दोनों सत्य हैं, लेकिन R, A का सही स्पष्टीकरण नहीं है।

A is true, but R is false.

A सत्य है, लेकिन R असत्य है।

Q.No: 93 Consider the following statements regarding the Ghaghara River system:

1.The Ghaghara originates from the Mapchachungo glacier in the Himalayas.

2.It forms a deep gorge at Shishapani before entering the plains.

3.It merges with the Ganga at Allahabad after receiving the Sarda River.

Which of the above statements is/are correct?

घाघरा नदी प्रणाली के संबंध में निम्नलिखित कथनों पर विचार कीजिए:

1. घाघरा नदी हिमालय में मापचाचुंगो ग्लेशियर से निकलती है।

2. यह मैदानी इलाकों में प्रवेश करने से पहले शीशपानी में एक गहरी घाटी बनाती है।

3. यह सारदा नदी से मिलने के बाद इलाहाबाद में गंगा में मिल जाती है।

उपरोक्त कथनों में से कौन सा/से सही है/हैं?

Only 1 and 3

केवल 1 और 3

Only 1 and 2

केवल 1 और 2

Only 2 and 3

केवल 2 और 3

1, 2 and 3 are correct

1, 2 और 3 सही हैं

Not Answered

Q.No: 94 What was the role of the University Grants Commission (UGC), established in 1956?

1956 में स्थापित विश्वविद्यालय अनुदान आयोग (UGC) की मुख्य भूमिका क्या थी?

To regulate trade agreements

व्यापार समझौतों को नियंत्रित करना

To promote agricultural development

कृषि विकास को प्रोत्साहित करना

To manage industrial policies

औद्योगिक नीतियों का प्रबंधन

To oversee and fund higher education institutions in India

भारत में उच्च शिक्षण संस्थानों की देखरेख और वित्तपोषण करना

Q.No: 95 Which level of the Panchayati Raj system operates at the village level?

पंचायत राज प्रणाली का कौन सा स्तर गांव स्तर पर कार्य करता है?

Panchayat Samiti

पंचायत समिति

Zila Parishad

जिला परिषद

Gram Panchayat

ग्राम पंचायत

Gram Sabha

ग्राम सभा

Q.No: 96 Which body is responsible for resolving disputes related to the election of the President of India?

भारत के राष्ट्रपति के निर्वाचन संबंधी विवादों को सुलझाने की जिम्मेदारी किस संस्था की है?

Election Commission

निर्वाचन आयोग

Supreme Court

सुप्रीम कोर्ट (उच्चतम न्यायालय)

Lok Sabha

लोकसभा

Q.No: 97 What is the name of India's first reusable hybrid rocket launched by a Tamil Nadu-based startup?

तमिलनाडु स्थित स्टार्टअप द्वारा लॉन्च किए गए भारत के पहले पुनः प्रयोज्य हाइब्रिड रॉकेट का नाम क्या है?

AGNI-V

अग्नि- V

RAKSHA-1

रक्षा-1

VAYU-1

वायु-1

RHUMI-1

रुमि-1

Not Answered

Q.No: 98 Which major reform was introduced in the National Education Policy (NEP), 2020?

नई राष्ट्रीय शिक्षा नीति (NEP), 2020 के अंतर्गत कौन-सा प्रमुख सुधार लाया गया?

Replacement of the 10+2 system with a 5+3+3+4 structure

10+2 प्रणाली के स्थान पर 5+3+3+4 संरचना लागू करना

Elimination of private schools

निजी स्कूलों की समाप्ति

Compulsory Sanskrit education

संस्कृत शिक्षा को अनिवार्य बनाना

Mandatory board exams for all grades

सभी कक्षाओं के लिए बोर्ड परीक्षा अनिवार्य करना

Q.No: 99 What is the role of the Foreigners' Tribunal in the NRC (National Register of Citizens) process?

एनआरसी (राष्ट्रीय नागरिक रजिस्टर) प्रक्रिया में विदेशियों के न्यायाधिकरण की क्या भूमिका होती है?

To conduct the Census

जनगणना कराना

To issue voter ID cards

मतदाता पहचान पत्र जारी करने हेतु

To deport illegal immigrants

अवैध प्रवासियों को निर्वासित करना

To verify citizenship claims of individuals excluded from the NRC

एनआरसी से बाहर हुए व्यक्तियों की नागरिकता की पुष्टि करना

Q.No: 100 Which ISRO centers participate in International Geosphere-Biosphere programme?

अंतर्राष्ट्रीय भूमंडल-जैवमंडल कार्यक्रम में कौन से इसरो केंद्र भाग लेते हैं?

ISRO Headquarters, Space Applications Centre, National Remote Sensing Centre, Vikram Sarabhai Space Centre

इसरो मुख्यालय, अंतरिक्ष उपयोग केंद्र, राष्ट्रीय सुदूर संवेदन केंद्र, विक्रम साराभाई अंतरिक्ष केंद्र

Space Physics Laboratory, National Remote Sensing Centre, Indian Institute of Remote Sensing, Physical Research Laboratory

अंतरिक्ष भौतिकी प्रयोगशाला, राष्ट्रीय सुदूर संवेदन केंद्र, भारतीय सुदूर संवेदन संस्थान, भौतिक अनुसंधान प्रयोगशाला

Physical Research Laboratory, Space Applications Centre, Indian Institute of Remote Sensing, ISRO Satellite Centre

भौतिक अनुसंधान प्रयोगशाला, अंतरिक्ष उपयोग केंद्र, भारतीय सुदूर संवेदन संस्थान, इसरो उपग्रह केंद्र

Space Application Centre (SAC), Indian Institute of Remote Sensing, Space Applications Centre, National Remote Sensing Centre

अंतरिक्ष अनुप्रयोग केंद्र (एसएसी), भारतीय सुदूर संवेदन संस्थान, अंतरिक्ष अनुप्रयोग केंद्र, राष्ट्रीय सुदूर संवेदन केंद्र

Not Answered

Q.No: 101	<p>Transform the following sentence into active voice.</p> <p>The royal sword is said to have been transferred to a new museum where it would have been preserved properly.</p>
	Someone is said to transfer the royal sword to a new museum where they would have preserved it properly.
	Someone is said to have transferred the royal sword to a new museum which they would have preserved it properly.
	Someone is said to have transferred the royal sword to a new museum where they would preserve it properly.
	Someone is said to have transferred the royal sword to a new museum where they would have preserved it properly.

Q.No: 102	<p>Read the following passage and answer the questions based on the passage:</p> <p>Wildlife conservation has increased in importance since governments and NGOs have realized that locals are vital guardians of the environment. Instead of mandating top-down orders, successful initiatives recruit villagers to protect threatened species, serve as informants, and generate income from ecotourism. In other parts of Africa and Asia, community rangers are taught tracking and first aid, while women's organizations produce handicrafts out of sustainable forest products. These programs not only restrict poaching but also create ownership and pride in the maintenance of biodiversity. There are still obstacles, however: low funding levels, human-wildlife conflict, and uncertain land-use rights can undo success. Continued dialogue between stakeholders and equitable benefit-sharing mechanisms are essential in guaranteeing that conservation outcomes are directed to community well-being.</p> <p>What is the primary focus of the passage?</p>
	Criticize eco-tourism for harming wildlife
	Describe the role of communities in conservation
	Explain how poachers operate
	Advocate for stricter government enforcement

Q.No: 103	<p>Read the following passage and answer the questions based on the passage:</p> <p>Wildlife conservation has increased in importance since governments and NGOs have realized that locals are vital guardians of the environment. Instead of mandating top-down orders, successful initiatives recruit villagers to protect threatened species, serve as informants, and generate income from ecotourism. In other parts of Africa and Asia, community rangers are taught tracking and first aid, while women's organizations produce handicrafts out of sustainable forest products. These programs not only restrict poaching but also create ownership and pride in the maintenance of biodiversity. There are still obstacles, however: low funding levels, human-wildlife conflict, and uncertain land-use rights can undo success. Continued dialogue between stakeholders and equitable benefit-sharing mechanisms are essential in guaranteeing that conservation outcomes are directed to community well-being.</p> <p>In context, the phrase "top-down regulations" most nearly means:</p>
	Rules created by local villagers
	Policies imposed by higher authorities
	Guidelines developed by scientists
	Suggestions from tourists

Q.No: 104	<p>Read the following passage and answer the questions based on the passage:</p> <p>Wildlife conservation has increased in importance since governments and NGOs have realized that locals are vital guardians of the environment. Instead of mandating top-down orders, successful initiatives recruit villagers to protect threatened species, serve as informants, and generate income from ecotourism. In other parts of Africa and Asia, community rangers are taught tracking and first aid, while women's organizations produce handicrafts out of sustainable forest products. These programs not only restrict poaching but also create ownership and pride in the maintenance of biodiversity. There are still obstacles, however: low funding levels, human-wildlife conflict, and uncertain land-use rights can undo success. Continued dialogue between stakeholders and equitable benefit-sharing mechanisms are essential in guaranteeing that conservation outcomes are directed to community well-being.</p> <p>According to the passage, which activity helps villagers earn income?</p>
	Poaching endangered species
	Crafting handicrafts from sustainable products

Clearing forests for agriculture

Mining minerals

Q.No: 105 **Read the following passage and answer the questions based on the passage:**

Wildlife conservation has increased in importance since governments and NGOs have realized that locals are vital guardians of the environment. Instead of mandating top-down orders, successful initiatives recruit villagers to protect threatened species, serve as informants, and generate income from ecotourism. In other parts of Africa and Asia, community rangers are taught tracking and first aid, while women's organizations produce handicrafts out of sustainable forest products. These programs not only restrict poaching but also create ownership and pride in the maintenance of biodiversity. There are still obstacles, however: low funding levels, human-wildlife conflict, and uncertain land-use rights can undo success. Continued dialogue between stakeholders and equitable benefit-sharing mechanisms are essential in guaranteeing that conservation outcomes are directed to community well-being.

Which challenge is NOT mentioned as affecting community conservation?

Human-wildlife conflicts

Inadequate funding

Climate change

Unclear land-use rights

Q.No: 106 **Read the following passage and answer the questions based on the passage:**

Wildlife conservation has increased in importance since governments and NGOs have realized that locals are vital guardians of the environment. Instead of mandating top-down orders, successful initiatives recruit villagers to protect threatened species, serve as informants, and generate income from ecotourism. In other parts of Africa and Asia, community rangers are taught tracking and first aid, while women's organizations produce handicrafts out of sustainable forest products. These programs not only restrict poaching but also create ownership and pride in the maintenance of biodiversity. There are still obstacles, however: low funding levels, human-wildlife conflict, and uncertain land-use rights can undo success. Continued dialogue between stakeholders and equitable benefit-sharing mechanisms are essential in guaranteeing that conservation outcomes are directed to community well-being.

The tone of the passage is best described as:

Pessimistic

Promotional

Objective

Sarcastic

Q.No: 107 **Read the following passage and answer the questions based on the passage:**

Good public transport networks are the pillars of urban sustainability. Buses, trams, and metro lines can transport big groups of passengers without relying so much on private cars—and therefore eliminating traffic snarls and emissions. Integrated fares across modes of travel make it easy to move around: one ticket could pay for bus, train, and bike-share travel. Spending money on exclusive lanes and priority signaling also makes them faster and more dependable. Nonetheless, constructing and retaining such infrastructure requires capital and long-term vision. Equity issues are also important: lines need to serve low-income communities along with commercial hubs so that all citizens have a benefit. Finally, when properly planned, public transportation promotes economic efficiency, social mobility, and a cleaner city.

What is the central idea of the passage?

Public transport is outdated in modern cities

Investment in roads for private vehicles is more practical

A strong public transport system is essential for sustainable and inclusive cities

Public transport is mostly beneficial for tourists

Q.No: 108	<p>Read the following passage and answer the questions based on the passage:</p> <p>Good public transport networks are the pillars of urban sustainability. Buses, trams, and metro lines can transport big groups of passengers without relying so much on private cars—and therefore eliminating traffic snarls and emissions. Integrated fares across modes of travel make it easy to move around: one ticket could pay for bus, train, and bike-share travel. Spending money on exclusive lanes and priority signaling also makes them faster and more dependable. Nonetheless, constructing and retaining such infrastructure requires capital and long-term vision. Equity issues are also important: lines need to serve low-income communities along with commercial hubs so that all citizens have a benefit. Finally, when properly planned, public transportation promotes economic efficiency, social mobility, and a cleaner city.</p> <p>According to the passage, integrated fare systems:</p>
	Create financial burden for low-income riders
	Make switching between travel modes easier
	Are only for long-distance travel
	Encourage use of private vehicles

Q.No: 109	<p>Read the following passage and answer the questions based on the passage:</p> <p>Good public transport networks are the pillars of urban sustainability. Buses, trams, and metro lines can transport big groups of passengers without relying so much on private cars—and therefore eliminating traffic snarls and emissions. Integrated fares across modes of travel make it easy to move around: one ticket could pay for bus, train, and bike-share travel. Spending money on exclusive lanes and priority signaling also makes them faster and more dependable. Nonetheless, constructing and retaining such infrastructure requires capital and long-term vision. Equity issues are also important: lines need to serve low-income communities along with commercial hubs so that all citizens have a benefit. Finally, when properly planned, public transportation promotes economic efficiency, social mobility, and a cleaner city.</p> <p>As per the passage, what is needed to maintain strong public transport?</p>
	Minimal regulation
	Frequent tech upgrades
	Sufficient funding and long-term planning
	Higher taxes on private vehicles

Q.No: 110	<p>Read the following passage and answer the questions based on the passage:</p> <p>Good public transport networks are the pillars of urban sustainability. Buses, trams, and metro lines can transport big groups of passengers without relying so much on private cars—and therefore eliminating traffic snarls and emissions. Integrated fares across modes of travel make it easy to move around: one ticket could pay for bus, train, and bike-share travel. Spending money on exclusive lanes and priority signaling also makes them faster and more dependable. Nonetheless, constructing and retaining such infrastructure requires capital and long-term vision. Equity issues are also important: lines need to serve low-income communities along with commercial hubs so that all citizens have a benefit. Finally, when properly planned, public transportation promotes economic efficiency, social mobility, and a cleaner city.</p> <p>How does public transport contribute to equity?</p>
	By keeping fares high
	By focusing only on commercial zones
	By connecting low-income communities with wealthy areas,
	By offering free rides on weekends

Q.No: 111	<p>Read the following passage and answer the questions based on the passage:</p> <p>Good public transport networks are the pillars of urban sustainability. Buses, trams, and metro lines can transport big groups of passengers without relying so much on private cars—and therefore eliminating traffic snarls and emissions. Integrated fares across modes of travel make it easy to move around: one ticket could pay for bus, train, and bike-share travel. Spending money on exclusive lanes and priority signaling also makes them faster and more dependable. Nonetheless, constructing and retaining such infrastructure requires capital and long-term vision. Equity issues are also important: lines need to serve low-income communities along with commercial hubs so that all citizens have a benefit. Finally, when properly planned, public transportation promotes economic efficiency, social mobility, and a cleaner city.</p> <p>What is the tone of the passage?</p>
Skeptical	
Analytical and supportive	
Neutral	
Aggressive	

Q.No: 112	<p>In the following question, a sentence with a blank is given, followed by five words labeled (1), (2), (3), (4), and (5). Choose the word that fills the blank appropriately in the context of the passage.</p> <p>The truth of the self-conscious individual lies not in its immediate certainty, but in the dialectical movement of its becoming. Consciousness, in its pursuit of knowledge, initially assumes that its object is something external and independent. Yet, through the labour of experience, it discovers that this object is not truly separate but ____ (1) by consciousness itself.</p> <p>The apparent duality of subject and object is thus sublated in the dialectic, revealing that knowledge is not the passive reception of an external truth but an active process in which consciousness shapes and ____ (2) its own reality.</p> <p>This movement unfolds through a series of contradictions, in which each stage of consciousness, believing itself to have attained certainty, encounters its own inadequacy. The master-slave dialectic exemplifies this: self-consciousness seeks recognition from another, yet in asserting its dominance over the other, it paradoxically ____ (3) its own freedom.</p> <p>The master, in reducing the slave to a mere instrument, deprives himself of a fully realized recognition. Meanwhile, the slave, through labour and self-transformation, attains a deeper awareness of autonomy, demonstrating that freedom is not given but achieved through negation and ____ (4). Spirit (Geist) emerges as the reconciliation of these conflicts—not a static substance but a dynamic process of self-realization. Spirit unfolds historically, manifesting itself(5) in institutions, culture, and philosophy, gradually moving toward absolute knowing. This historical progression is not linear but dialectical, driven by the negation of old forms and the emergence of new ones.</p> <p>Use the appropriate for of the verb to complete the sentence. (1)</p>
Mediating	
Mediated	
Mediates	
has mediated	

Q.No: 113	<p>In the following question, a sentence with a blank is given, followed by five words labeled (1), (2), (3), (4), and (5). Choose the word that fills the blank appropriately in the context of the passage.</p> <p>The truth of the self-conscious individual lies not in its immediate certainty, but in the dialectical movement of its becoming. Consciousness, in its pursuit of knowledge, initially assumes that its object is something external and independent. Yet, through the labour of experience, it discovers that this object is not truly separate but ____ (1) by consciousness itself.</p> <p>The apparent duality of subject and object is thus sublated in the dialectic, revealing that knowledge is not the passive reception of an external truth but an active process in which consciousness shapes and ____ (2) its own reality.</p> <p>This movement unfolds through a series of contradictions, in which each stage of consciousness, believing itself to have attained certainty, encounters its own inadequacy. The master-slave dialectic exemplifies this: self-consciousness seeks recognition from another, yet in asserting its dominance over the other, it paradoxically ____ (3) its own freedom.</p> <p>The master, in reducing the slave to a mere instrument, deprives himself of a fully realized recognition. Meanwhile, the slave, through labour and self-transformation, attains a deeper awareness of autonomy, demonstrating that freedom is not given but achieved through negation and ____ (4). Spirit (Geist) emerges as the reconciliation of these conflicts—not a static substance but a dynamic process of self-realization. Spirit unfolds historically, manifesting itself(5) in institutions, culture, and philosophy, gradually moving toward absolute knowing. This historical progression is not linear but dialectical, driven by the negation of old forms and the emergence of new ones.</p> <p>Choose the suitable option to complete the sentence.(2)</p>
-----------	--

Transforms

Transports

Interrupts

Disabuses

Q.No: 114	<p>In the following question, a sentence with a blank is given, followed by five words labeled (1), (2), (3), (4), and (5). Choose the word that fills the blank appropriately in the context of the passage.</p> <p>The truth of the self-conscious individual lies not in its immediate certainty, but in the dialectical movement of its becoming. Consciousness, in its pursuit of knowledge, initially assumes that its object is something external and independent. Yet, through the labour of experience, it discovers that this object is not truly separate but ____ (1) by consciousness itself.</p> <p>The apparent duality of subject and object is thus sublated in the dialectic, revealing that knowledge is not the passive reception of an external truth but an active process in which consciousness shapes and ____ (2) its own reality.</p> <p>This movement unfolds through a series of contradictions, in which each stage of consciousness, believing itself to have attained certainty, encounters its own inadequacy. The master-slave dialectic exemplifies this: self-consciousness seeks recognition from another, yet in asserting its dominance over the other, it paradoxically ____ (3) its own freedom.</p> <p>The master, in reducing the slave to a mere instrument, deprives himself of a fully realized recognition. Meanwhile, the slave, through labour and self-transformation, attains a deeper awareness of autonomy, demonstrating that freedom is not given but achieved through negation and ____ (4). Spirit (Geist) emerges as the reconciliation of these conflicts—not a static substance but a dynamic process of self-realization. Spirit unfolds historically, manifesting itself(5) in institutions, culture, and philosophy, gradually moving toward absolute knowing. This historical progression is not linear but dialectical, driven by the negation of old forms and the emergence of new ones.</p> <p>Use the appropriate form of the verb "Undermine" (3)</p>
-----------	---

Undermines

were undermine

undermined

are undermining

Q.No: 115	<p>In the following question, a sentence with a blank is given, followed by five words labeled (1), (2), (3), (4), and (5). Choose the word that fills the blank appropriately in the context of the passage.</p> <p>The truth of the self-conscious individual lies not in its immediate certainty, but in the dialectical movement of its becoming. Consciousness, in its pursuit of knowledge, initially assumes that its object is something external and independent. Yet, through the labour of experience, it discovers that this object is not truly separate but ____ (1) by consciousness itself.</p> <p>The apparent duality of subject and object is thus sublated in the dialectic, revealing that knowledge is not the passive reception of an external truth but an active process in which consciousness shapes and ____ (2) its own reality.</p> <p>This movement unfolds through a series of contradictions, in which each stage of consciousness, believing itself to have attained certainty, encounters its own inadequacy. The master-slave dialectic exemplifies this: self-consciousness seeks recognition from another, yet in asserting its dominance over the other, it paradoxically ____ (3) its own freedom.</p> <p>The master, in reducing the slave to a mere instrument, deprives himself of a fully realized recognition. Meanwhile, the slave, through labour and self-transformation, attains a deeper awareness of autonomy, demonstrating that freedom is not given but achieved through negation and ____ (4). Spirit (Geist) emerges as the reconciliation of these conflicts—not a static substance but a dynamic process of self-realization. Spirit unfolds historically, manifesting itself(5) in institutions, culture, and philosophy, gradually moving toward absolute knowing. This historical progression is not linear but dialectical, driven by the negation of old forms and the emergence of new ones.</p> <p>Use the appropriate word according to the context of the passage.(4)</p>
-----------	---

Yield
Justification
Detachment
Retraction

Q.No: 116	<p>In the following question, a sentence with a blank is given, followed by five words labeled (1), (2), (3), (4), and (5). Choose the word that fills the blank appropriately in the context of the passage.</p> <p>The truth of the self-conscious individual lies not in its immediate certainty, but in the dialectical movement of its becoming. Consciousness, in its pursuit of knowledge, initially assumes that its object is something external and independent. Yet, through the labour of experience, it discovers that this object is not truly separate but ____ (1) by consciousness itself.</p> <p>The apparent duality of subject and object is thus sublated in the dialectic, revealing that knowledge is not the passive reception of an external truth but an active process in which consciousness shapes and ____ (2) its own reality.</p> <p>This movement unfolds through a series of contradictions, in which each stage of consciousness, believing itself to have attained certainty, encounters its own inadequacy. The master-slave dialectic exemplifies this: self-consciousness seeks recognition from another, yet in asserting its dominance over the other, it paradoxically ____ (3) its own freedom.</p> <p>The master, in reducing the slave to a mere instrument, deprives himself of a fully realized recognition. Meanwhile, the slave, through labour and self-transformation, attains a deeper awareness of autonomy, demonstrating that freedom is not given but achieved through negation and ____ (4). Spirit (Geist) emerges as the reconciliation of these conflicts—not a static substance but a dynamic process of self-realization. Spirit unfolds historically, manifesting itself(5) in institutions, culture, and philosophy, gradually moving toward absolute knowing. This historical progression is not linear but dialectical, driven by the negation of old forms and the emergence of new ones.</p> <p>Identify the type of the pronoun. (5)</p>
-----------	--

Possessive pronoun
Demonstrative pronoun
Reflexive pronoun
Interrogative pronouns

Q.No: 117	Choose the correct meaning of Idiom "To oil the hinges of silence".
To bribe someone to remain quiet	
To prevent secrets from being exposed	

To gradually break uncomfortable silence

To speak diplomatically in tense moments

Q.No: 118 Choose the correct option to complete the sentence.

Do you think it is going to ____ this afternoon?

reign

raign

rain

rein

Q.No: 119 Select the most appropriate option to fill in the blank.

The beggar was blind ____ one eye.

in

at

on

by

Q.No: 120 Choose the correct indirect speech form of the following sentence.

Roshan says, "I have completed my homework."

Roshan said that he had completed his homework.

Roshan says that he had completed his homework.

Roshan says that he has completed his homework.

Roshan said that he has completed his homework.

Q.No: 121 Select the most appropriate option to improve the bold part of the sentence.

I am not used **with this kind of work.**

to this kind of work

about this kind of work

at this kind of work

for this kind of work

Q.No: 122	<p>Which of the given options is the most logical sequencing of the following sentences to form a meaningful paragraph?</p> <ol style="list-style-type: none"> 1. Feminism began as a fight for women's suffrage and then expanded to include social discrimination, workplace inequalities and reproductive rights. 2. Nevertheless, the movement received significant support from progressive thinkers who believed in gender equality and the dismantling of patriarchal structures. 3. Conservatives viewed the feminist movement as threatening to family values, with fears that women would abandon traditional roles as wives and mothers. 4. The evolution of feminism has been a transformative journey, reflecting changing societal attitudes and the struggles for gender equality.
-----------	---

3-4-2-1

1-3-4-2

2-3-1-4

4-1-3-2

Q.No: 123	<p>Choose the correct indirect speech form of the following sentence.</p> <p>The labourers said to the contractor, "Did you ask the manager when we are going to receive our remuneration that has been pending for the last three months?"</p>
-----------	---

The labourers asked the contractor if he asked the manager when they were going to receive their remuneration that had been pending for the previous three months.

The labourers asked the contractor if he had asked the manager when they are going to receive their remuneration that was pending for the previous three months.

The labourers asked the contractor if had he asked the manager when they are going to receive their remuneration that was pending for the last three months.

The labourers asked the contractor if he had asked the manager when they were going to receive their remuneration that had been pending for the previous three months.

Q.No: 124	<p>Select the one-word term for:</p> <p>"A brief note or explanation added alongside a diagram or passage to provide clarity or context."</p>
-----------	---

Annotation

Footnote

Glossary

Caption

Q.No: 125	<p>Choose the correct one-word substitution for:</p> <p>A place where aircraft are kept</p>
-----------	---

Dockyard

Depot

Hangar

Barracks

Q.No: 126	<p>Choose the antonym of 'affluent':</p>
-----------	--

Wealthy

Rich

Destitute

Prosperous

Q.No: 127 Which of the given options is the most logical sequencing of the following sentences to form a meaningful paragraph?

1. Franklin hypothesized that lightning was a form of electrical discharge.
2. Franklin flew a kite made of a silk string and attached a metal key to it during a storm.
3. He wanted to prove this by conducting an experiment to capture the electrical charge from a thunderstorm.
4. As the storm approached, the kite was struck by lightning, and the metal key conducted the electrical charge.

1-2-3-4

1-3-2-4

1-2-4-3

1-4-3-2

Q.No: 128 Select the synonym of **Vigilant**.

Inattentive

Sleepy

Alert

Careless

Q.No: 129 What does the idiom 'Go the extra mile' mean?

Work half-heartedly

Work harder than expected

Stay idle

Leave midway

Q.No: 130 Convert the sentence provided below from its passive voice structure to an active voice structure:

It is believed that the minister will announce the new reforms next week.

People think the reforms have already been announced.

People believe that the minister will announce the new reforms next week.

The new reforms are announced by the minister.

It was believed that the reforms would be announced.

Q.No: 131 Choose the correct indirect speech form of the following sentence.

Rajesh says to Malini, "We did not like the dance last year."

Rajesh tells Malini that they had not liked the dance the previous year.

Rajesh tells Malini that they did not like the dance the previous year.

Rajesh told Malini that they did not like the dance last year.

Rajesh told Malini that they had not liked the dance the previous year.

Q.No: 132 Select the most appropriate option to improve the bold part of the sentence.
The teacher explained **him the topic**.

taught him the topic

told him the topic

explained the topic to him

explained to him the topic

Q.No: 133 Choose the correct direct speech form of the following sentence.

He asked me whether I had taken the medications.

He said, "Whether you take the medications?"

He said, "Did you take the medications?"

He said, "Did I take the medications?"

He said, "Did you took the medications?"

Q.No: 134 **Change the following from active to passive:**

People believe that the company will launch the new product before the end of this fiscal year.

The company believes to launch the product before the end of the fiscal year.

The new product is believed to be launched before the fiscal year ends.

It has been believed that the new product will launch this year.

It is believed that the company will launch the new product before the end of this fiscal year.

Q.No: 135 Select the most appropriate option to fill in the blank.
The soldier laid down his life ____ the nation.

to

by

with

for

Q.No: 136 Select the most appropriate option to improve the bold part of the sentence.
He said me **a lie**.

told me a lie

said to me lie

told me lie

said lie

Q.No: 137	Identify the word in this sentence that contains an error. The keys are inside the table drawer.
keys	
drawer	
table	
inside	
Q.No: 138	Select the correct passive form of the given sentence. "The chef will prepare the meal by noon."
The meal will be prepared by the chef by noon.	
The chef will be prepared the meal.	
The meal would be prepared by noon.	
The meal will prepared by the chef by noon.	
Q.No: 139	Choose the most suitable option to replace the underlined part of the sentence. If the sentence is already correct, select 'No substitution required'. Each of the candidates <u>have submitted their documents</u> for verification.
had submitted their document	
No substitution required	
has submitted their documents	
is submitted their documents	
Q.No: 140	Choose the antonym of 'commend':
Praise	
Approve	
criticize	
Applaud	
Q.No: 141	Fill in the blank with appropriate parts of speech. We spent an _____ day at school yesterday
enjoyable	
enjoying	
enjoyment	
enjoyed	
Q.No: 142	Choose the correctly spelt word:
Mischievous	
Mischievious	
Mischeivous	

Mishevious

Q.No: 143 Select the one-word term for: "Someone who is consistently excluded or ignored by a community due to lack of trust or popularity."

Dissenter

Noble

Pariah

Loyalist

Q.No: 144 Choose the most suitable option to replace the underlined part of the sentence. If the sentence is already correct, select 'No substitution required'.

The research paper was full of errors because the data is not verified by any expert.

has not been verified

is not being verified yet

No substitution required

was not verified

Q.No: 145 Select the most appropriate option to improve the bold part of the sentence.

She said that she **will go** to market later.

shall go

could go

can go

would go

Q.No: 146 Choose the correct one-word substitution for:

"Property inherited from one's father"

Matrimony

Patrimony

Autocracy

Testimony

Q.No: 147 Choose the most suitable option to replace the underlined part of the sentence. If the sentence is already correct, select 'No substitution required'.

If I was you, I would consult a specialist.

No substitution required

am you

would be you

were you

Q.No: 148 Select the synonym of **Obsequious**.

Defiant

Aggressive

Proud

Submissive

Q.No: 149 Select the most appropriate option to fill in the blank.
He is good ____ mathematics.

by

to

in

all

Q.No: 150 Choose the correct sequence to form a meaningful sentence:
(A) very interesting (B) is reading (C) books (D) fiction

BDCA

BADC

BCAD

BACD

Q.No: 151 Find the antonym of 'Wilt'.

Cruel

Merciless

Revive

Strict

Q.No: 152 Which of the given options is the most logical sequencing of the following sentences to form a meaningful paragraph?

1. It cut off oxygen and prevented the usual decay caused by air, moisture, and bacteria.
2. The excavation of Pompeii provided a remarkably well-preserved glimpse into life in ancient Rome.
3. When the eruption occurred, a thick layer of hot ash and pumice rapidly buried the town.
4. Unlike other ruins, Pompeii remained frozen in time due to Mount Vesuvius' sudden eruption.

1-2-4-3

3-1-4-2

4-2-3-1

2-4-3-1

Q.No: 153 Which sentence contains a word that is spelled incorrectly?

The scientist explained the hypothesis behind the experiment clearly.

The new hybrid model of the car is both fuel-efficient and stylish.

The therapist used hypnosis to help the patient recall past memories.

It's important to maintain hygienic practices to prevent illness.

Q.No: 154	What does the idiom 'Take to task' mean?
	Scold
	Congratulate
	Reward
	Praise

Q.No: 155	Fill in the blank with an appropriate adverb. The food is _____ good.
	cautiously
	extremely
	boldly
	annually

Q.No: 156	Select the most appropriate option to improve the bold part of the sentence. He has much works to finish.
	a lot of work
	plenty works
	many works
	lot of tasks

Q.No: 157	Rearrange the following steps of the Union Budget preparation in the correct order: P. The finance minister presents the budget in Parliament Q. The Ministry of Finance collects estimates from various ministries R. The budget is passed by both houses of Parliament S. The Cabinet approves the final draft of the budget
	P → Q → S → R
	Q → S → P → R
	Q → P → R → S
	S → Q → P → R

Q.No: 158	Arrange the sentence parts: (A) should follow (B) traffic rules (C) strictly (D) everyone
	DABC
	DCAB
	DBCA
	DACB

Q.No: 159	Find the incorrect part of the sentence: One must keep his promises.
	One
	No error

must keep

his promises

Q.No: 160 Identify the part containing a grammatical or structural error:
The behaviour of these students leave much to be desired.

leave much

The behaviour

of these students

to be desired

Q.No: 161 Identify the antonym of 'Quell'.

Suppress

Calm

Silence

Agitate

Q.No: 162 Select the synonym of Pinnacle.

Base

Decline

Bottom

Peak

Q.No: 163 Convert the sentence provided below from its passive voice structure to an active voice structure:
The groceries are delivered to the house by the shopkeeper every evening.

The shopkeeper delivers the groceries to the house every evening.

The groceries were delivered to the house by the shopkeeper.

The shopkeeper had delivered the groceries to the house.

The groceries are being delivered to the house every evening.

Q.No: 164 Which of the given options is the most logical sequencing of the following sentences to form a meaningful paragraph?

1. The advancements in science led by figures like Copernicus, Galileo and Descartes also questioned its established views of the universe.
2. It encouraged the growth of secularism and individualism, drawing inspiration from the classical works of ancient Greece and Rome.
3. The invention of the printing press further accelerated this shift, making books more accessible and promoting literacy and individual thinking.
4. The Renaissance ushered in a new era that questioned the monopoly of the Roman Catholic Church on knowledge and spiritual guidance.

2-1-4-3

1-3-4-2

3-2-1-4

Q.No: 165 Find the incorrect part of the sentence:
Neither Ram nor his brothers is reliable.

Neither Ram

is reliable

No error

nor his brothers

Q.No: 166 Identify the error in the sentence.
He has saw the movie three times already.

movie

three

already

saw

Q.No: 167 Find the incorrect part of the sentence:
She is junior than me.

She is

junior than

No error

me

Q.No: 168 Select the most appropriate option to fill in the blank.
He is afraid ____ snakes.

to

of

with

for

Q.No: 169 Choose the correct meaning of Idiom "Bite the bullet".

Endure something painful

Make a bold plan

Speak without thinking

Tell a secret

Q.No: 170 Select the correct passive form of the given sentence.
"The manager will approve the application."

The application has been approved.

The application will be approved by the manager.

The application was being approved.

The application is approved by the manager.

Q.No: 171 Choose the correct direct speech form of the following sentence.

They said that they had already completed their homework.

They said, "We already completed their homework."

They said, "We have completed our homework."

They said, "We have already completed homework of ours."

They said, "We have already completed our homework."

Q.No: 172 Find the incorrect part of the sentence:
She is more smarter than her sister.

No error

more smarter

She is

than her sister

Q.No: 173 Arrange the sentence parts:
(A) to submit (B) asked him (C) the report (D) the manager

DABC

BACD

DBCA

DCAB

Q.No: 174 Identify the word that is not correctly spelled.

Aberration

Discrepancy

Surveillance

Insurmountable

Q.No: 175 Identify the word in this sentence that contains an error.

She arrived to the office early this morning.

to

morning

arrived

office

Q.No: 176	Select the correct spelling of a word meaning 'a long adventurous journey'.
Odessay	
Odyssey	
Odessy	
Oddyseey	

Q.No: 177	Select the most appropriate option to fill in the blank. The police looked ____ the matter.
into	
for	
by	
at	

Q.No: 178	Select the correct active form of the given sentence. "The letters were delivered by the postman."
The postman had delivered the letters.	
The postman delivers the letters.	
The postman has delivered the letters.	
The postman delivered the letters.	

Q.No: 179	Select the most appropriate homonym. The old fort was taken by storm .
Assault	
Tornado	
Rain	
Breeze	

Q.No: 180	What does the idiom 'Not one's cup of tea' mean?
Impossible task	
Very easy	
Something disliked	
Something enjoyable	

Q.No: 181	Choose the antonym of 'tangible':
Invisible	
Real	
Intangible	
Definite	

Q.No: 182	Choose the sentence that uses a homonym of the underlined word: He had to <u>tear</u> the envelope to open it.
The comedian caused the audience to <u>tear up</u> with laughter.	
He found a small <u>tear</u> in the corner.	
Please don't <u>tear</u> the paper again.	
She used tape to fix the <u>tear</u> on the bag.	
Not Answered	

Q.No: 183	Select the most appropriate option to improve the bold part of the sentence. He denied to help me .
help to me	
for helping me	
helping me	
to helping me	

Q.No: 184	Select the synonym of Cacophony .
Harmony	
Discord	
Order	
Silence	

Q.No: 185	Choose the correct indirect speech form of the following sentence. Rashmi said to Reshma, "Mahima was dancing on the floor when she was called by her mother."
Rashmi told Reshma that Mahima had danced on the floor when she had been called by her mother.	
Rashmi told Reshma that Mahima had been dancing on the floor when was called by her mother.	
Rashmi told Reshma that Mahima had been dancing on the floor when she had been called by her mother.	
Rashmi told Reshma that Mahima was dancing on the floor when she was called by her mother.	

Q.No: 186	Choose the sentence that uses a homonym of the underlined word: The <u>lead</u> pipes were replaced due to safety concerns.
The general will <u>lead</u> the troops into battle.	
Exposure to <u>lead</u> can cause health issues in children.	
The old house still had <u>lead</u> in its plumbing system.	
They tested the soil for traces of <u>lead</u> .	

Q.No: 187	Identify the part containing a grammatical or structural error: It is high time you start studying seriously.
studying seriously	
It is high time	
No error	

you start

Q.No: 188 Choose the antonym of 'magnanimous':

Noble

Petty

Forgiving

Generous

Q.No: 189 Choose the correct one-word substitution for:

"A facility equipped with instruments for studying stars, planets, and other celestial bodies"



Greenhouse

Archive

Q.No: 190 Choose the correct option to complete the sentence.

She tied the belt tightly around her _____.

waste

weist

west

waist

Q.No: 191 Select the most appropriate option to fill in the blank.

The soldiers died ____ their country.

in

at

by

for

Q.No: 192 Convert the sentence provided below from its passive voice structure to an active voice structure:

The house is cleaned by her every morning before breakfast.

She is cleaning the house every morning before breakfast.



She cleans the house every morning before breakfast.



Q.No: 193



Create

Alter

Hide

Destroy

Q.No: 194 Choose the correct direct speech form of the following sentence.

He told that when they had reached the station, the train had already left.

He said, "When we have reach the station, the train had already left."

He said, "When we reached the station, the train had already left."

He said, "When we were reaching the station, the train was already leaving."

He said, "When we reach the station, the train has already left."

Q.No: 195 What is the place for ammunition and weapons called?

Gallery

Library

Arsenal

Laboratory

Q.No: 196 Select the most appropriate option to improve the bold part of the sentence.

The man is blind **of one eye**.

with one eye

by one eye



from one eye


Q.No: 197 Select the correct active form of the given sentence.





"The hall is being decorated by the staff."



Q.No: 198



Q.No: 199	Choose the correct indirect speech form of the following sentence. They said, "They had a very good habit."
	They told that we had a very good habit.
	They told that they had had a very good habit.
	
	They told that we had had a very good habit.

Q.No: 200	Which of the given options is the most logical sequencing of the following sentences to form a meaningful paragraph? 1. He has inspired millions through his speeches and writings. 2. He came to be known as the "Missile Man of India" for his contributions. 3. In the year 2002, he became the President of India. 4. Dr. A.P.J. Abdul Kalam worked as a scientist at ISRO for forty years.
	
	
	
	

KD Job Updates



SSC ONLINE EXAMINATION

CANDIDATE RESPONSE SHEET/GRIEVANCE SYSTEM

[View Your Responses](#)
[Click Here Grievance About Question](#)
[Click Here View Grievance Questions](#)

Admin loggedin.[[Logout](#)]

Exam Name : Steno Grade C and D ▾

Test Date : 06 Aug 2025

Test Time : 05:30 PM

Centre : MPIND298_INDORE INTERNATIONAL COLLEGE_210402

Correct Option selected Wrong Option selected Correct Option Not Answered

PART - A (General Intelligence & Reasoning)

Q.No: 1 In each of the following questions, a pair of words (letter sequences) is given on the left-hand side of the double colon (::), which follows a certain alphabetical pattern. Identify the logic in the first pair and apply the same logic to the third word to find the correct corresponding word from the options.

BOX : ANT :: FIX : ?

निम्नलिखित प्रत्येक प्रश्न में, दोहरे कोलन (::) के बाईं ओर शब्दों का एक युग्म (अक्षर क्रम) दिया गया है, जो एक निश्चित वर्णमाला क्रम का अनुसरण करता है। पहले युग्म में तर्क पहचानिए और विकल्पों में से सही संगत शब्द ज्ञात करने के लिए उसी तर्क को तीसरे शब्द पर लागू कीजिए।

BOX : ANT :: FIX : ?

GHX

GHX

GHX

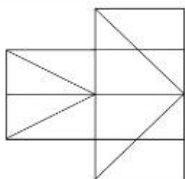
FGW

FGW

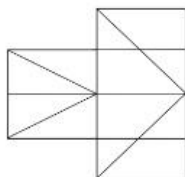
HIM

HIM

Q.No: 2 How many triangles are there in the given figure.



दी गई आकृति में कितने त्रिभुज हैं?



10

10

12

12

13

13

14

14

Q.No: 3 If $\triangle : 3 :: \square : ? :: \diamond : 5$

अगर $\triangle : 3 :: \square : ? :: \diamond : 5$

7
7
5
5
4
4
6
6

Q.No: 4	INR 15000 at 10% compound interest compounded quarterly for 2 years yields? 10% चक्रवृद्धि ब्याज पर 2 वर्षों के लिए त्रैमासिक रूप से संयोजित 15000 रुपये का लाभ?
INR 18432	
18432 रुपये	
INR 18276	
18276 रुपये	
INR 18654	
18654 रुपये	
INR 18225	
18225 रुपये	
Not Answered	

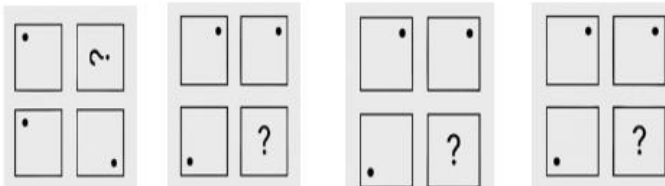
Q.No: 5	Guitar, Piano, Violin, Microphone – which is the odd one? गिटार, पियानो, वायलिन, माइक्रोफोन - इनमें से कौन सा विषम है?
Microphone	
माइक्रोफोन	
Violin	
वायलिन	
Piano	
पियानो	
Guitar	
गिटार	

Q.No: 6	A figure consists of a square with 4 equal horizontal and 4 equal vertical lines dividing it into a 5×5 grid. How many squares can be counted in total? एक आकृति में एक वर्ग है जिसमें 4 बराबर क्षैतिज और 4 बराबर ऊर्ध्वाधर रेखाएँ हैं जो इसे 5×5 ग्रिड में विभाजित करती हैं। कुल कितने वर्ग गिने जा सकते हैं?
550	
550	
259	
259	
750	
750	
850	
850	
Not Answered	



Q.No: 7	Identify the water image of: US91Q4M5W3 जल छवि की पहचान करें: US91Q4M5W3
U28J04W2M3	
U28J04W2M3	
U26J04W2M3	

N26J04W2M3
 NS0J04W2M8
 NS0J04W2M8
 N20J04W2M8
 N20J04W2M8

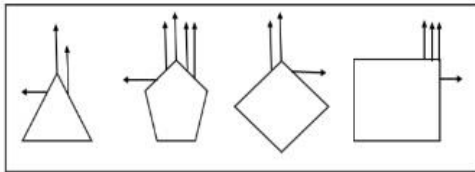
Q.No: 8 Which of the following is the correct sequence?



निम्नलिखित में से कौन सा अनुक्रम सही है?

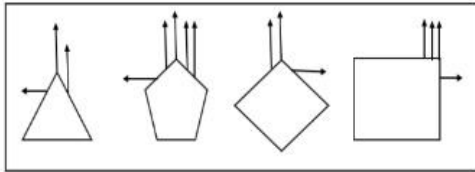


Q.No: 9 Which one of the following figures breaks the pattern followed by the others?



A B C D

निम्नलिखित में से कौन सी आकृति अन्य आकृतियों द्वारा अपनाए गए पैटर्न को तोड़ती है?



A B C D

D
D
A
A
B
B

Q.No: 10 What will be the next number in the series: **8, 12, 24, 60, ?**

श्रृंखला में अगली संख्या क्या होगी: 8, 12, 24, 60, ?

100
100
180
180
120
120
150
150

Not Answered

Q.No: 11 Find the next term in the given series. **2Z, 4X, 8U, 14Q, ?**

दी गई श्रृंखला में अगला पद ज्ञात कीजिए। **2Z, 4X, 8U, 14Q, ?**

44N
44N
33K
33K
22I
22I
11M
11M

Q.No: 12 Choose the missing shape in the analogy.

● : ● :: □ : ?

सादृश्य में लुप्त आकृति को चुनें।

● : ● :: □ : ?

- ☐
- ☐
- ☐
- ☐
- ☐
- ☐

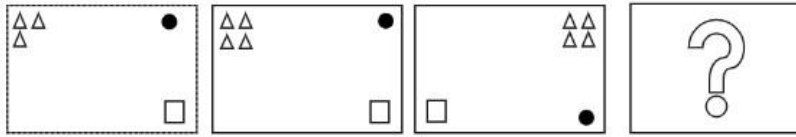
Q.No: 13	<p>In the following series, a specific pattern is followed for both the letters and the numbers. Identify the set of numbers that correctly fills the blanks in the given sequence. Z, 51, X, 68, V, __, T, 84, R, 83, P, __, N, 63, L, 44</p> <p>निम्नलिखित श्रृंखला में, अक्षरों और संख्याओं दोनों के लिए एक विशिष्ट पैटर्न का पालन किया गया है। दिए गए क्रम में रिक्त स्थानों को सही ढंग से भरने वाले संख्याओं के समूह को पहचानिए। Z, 51, X, 68, V, __, T, 84, R, 83, P, __, N, 63, L, 44</p>
(70, 65)	
(70, 65)	
(79, 76)	
(79, 76)	
(75, 70)	
(75, 70)	
(85, 106)	
(85, 106)	

Q.No: 14	<p>Criteria to be selected as Junior Analyst Eligibility Criteria (as on 15-07-2023): Must have a B.Sc. in Statistics/Mathematics with minimum 65% marks. Age between 23 and 30 years. Must have completed a Data Analytics Certificate course. Should have 2 years of analytical work experience. Special Case: If candidate has only 1 year experience, but has Master's degree in Data Science, refer to Project Manager. Case: Meera is 26 years old, B.Sc. in Statistics with 70% marks, has done a certificate course and holds a Master's in Data Science. She has only 1 year experience. What should be done in Meera's case?</p> <p>जूनियर एनालिस्ट के रूप में चयन के मानदंड पात्रता मानदंड (15-07-2023 तक): सांख्यिकी/गणित में न्यूनतम 65% अंकों के साथ बी.एससी. की डिग्री होनी चाहिए। आयु 23 से 30 वर्ष के बीच। डेटा एनालिटिक्स सर्टिफिकेट कोर्स पूरा किया होना चाहिए। विश्लेषणात्मक कार्य का 2 वर्ष का अनुभव होना चाहिए। विशेष मामला: यदि उम्मीदवार के पास केवल 1 वर्ष का अनुभव है, लेकिन डेटा साइंस में मास्टर डिग्री है, तो प्रोजेक्ट मैनेजर से संपर्क करें। मामला: मीरा 26 वर्ष की है, उसने 70% अंकों के साथ सांख्यिकी में बी.एससी. की डिग्री प्राप्त की है, उसने एक सर्टिफिकेट कोर्स किया है और डेटा साइंस में मास्टर डिग्री प्राप्त की है। उसके पास केवल 1 वर्ष का अनुभव है। मीरा के मामले में क्या किया जाना चाहिए?</p>
	Refer to Project Manager
	परियोजना प्रबंधक से संपर्क करें
	Select the candidate
	उम्मीदवार का चयन करें
	Refer to HR
	मानव संसाधन विभाग से संपर्क करें
	Reject the candidate
	उम्मीदवार को अस्वीकार करें

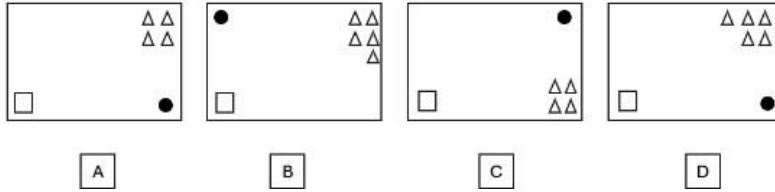
Q.No: 15

Identify the figure that best fits in place of the question mark.

Question figure:

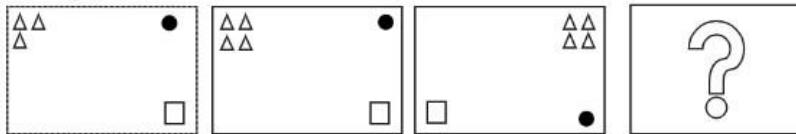


Answer figure:

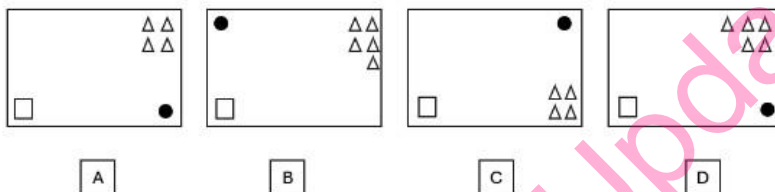


प्रश्न चिह्न के स्थान पर सबसे उपयुक्त आकृति की पहचान करें।

प्रश्न आकृति:



उत्तर आकृति:

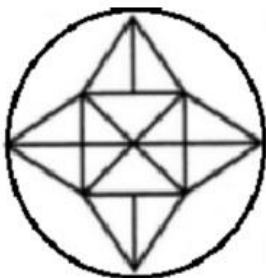


A
A
D
D
C
C
B
B

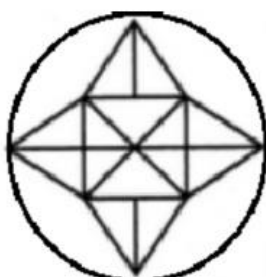
Not Answered

Q.No: 16

How many triangles are in the given figure?



दी गई आकृति में कितने त्रिभुज हैं?



28

28

18

18

20

20

26

26

Q.No: 17 Read the situation and choose the best judgment:

You are shopping in a busy supermarket and notice a person quickly slipping a small, inexpensive item into their bag without scanning or paying for it. The store appears understaffed, and no security personnel are immediately visible.

Question: Given this situation, which of the following is the most ethical and responsible action?

स्थिति को पढ़ें और सबसे अच्छा निर्णय चुनें:

आप एक व्यस्त सुपरमार्केट में खरीदारी कर रहे हैं और देखते हैं कि एक व्यक्ति जल्दी से एक छोटी, सस्ती वस्तु को बिना स्कैन किए या भुगतान किए अपने बैग में डाल रहा है। स्टोर में कर्मचारियों की कमी लग रही है, और कोई सुरक्षाकर्मी तुरंत दिखाई नहीं दे रहा है।

प्रश्न: इस स्थिति को देखते हुए, निम्नलिखित में से कौन सा सबसे नैतिक और जिम्मेदार कार्य है?

Directly confront the person and demand they pay for the item.

व्यक्ति का सीधे सामना करें और मांग करें कि वह वस्तु के लिए भुगतान करें।

Ignore the incident, as it is a small item and not your responsibility.

इस घटना को नज़रअंदाज़ करें, क्योंकि यह एक छोटी वस्तु है और आपकी ज़िम्मेदारी नहीं है।

Take a photo or video of the person as evidence, then post it on social media.

उस व्यक्ति की तस्वीर या वीडियो सबूत के तौर पर लें, फिर उसे सोशल मीडिया पर पोस्ट कर दें।

Discreetly find a store employee or manager and quietly inform them of what you observed.

खामोशी से स्टोर के किसी कर्मचारी या प्रबंधक को ढूँढ़ें और उन्हें बताएं कि आपने क्या देखा।

Q.No: 18 Which figure breaks the 3D classification rule?

कौन सी आकृति 3डी वर्गीकरण नियम को तोड़ती है?

☒

☒

☐

☐

☐

☐

☐

☐

Q.No: 19 Find the odd one out:

विषम चुनें:

512

512

343

343

216

216

289

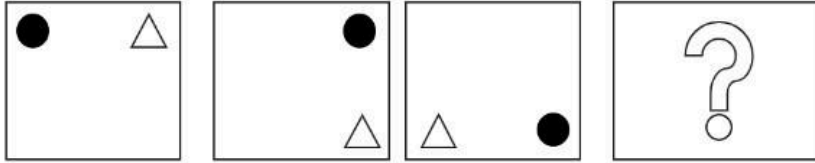
289

Q.No: 20	<p>Post: Project Manager – Urban Infrastructure Eligibility Criteria (as on 01-01-2025): B.E./B.Tech in Civil or Urban Engineering with minimum 75% marks. Must have completed MBA in Infrastructure/Project Management with 65% or above. Total experience must be minimum 10 years, out of which at least 3 years as team lead. Age limit: Maximum 42 years. Candidate must have handled at least two full-cycle government projects.</p> <p>Special Clause: If no MBA, but 12+ years of experience including at least 2 years abroad, and led 3+ projects → refer to Advisory Board. If project count is only one, but other conditions are fully met, refer to Infrastructure Commission.</p> <p>Case: Sneha has 78% in B.Tech Civil, no MBA, 13 years of experience including 3 years abroad, and has led 4 projects (all for state government).</p> <p>Question: What should be done in Sneha's case?</p> <p>पद: प्रोजेक्ट मैनेजर - अर्बन इंफ्रास्ट्रक्चर पात्रता मापदंड (दिनांक 01-01-2025 तक): सिविल या अर्बन इंजीनियरिंग में बी.ई./बी.टेक न्यूनतम 75% अंकों के साथ। इंफ्रास्ट्रक्चर/प्रोजेक्ट मैनेजमेंट में एमबीए न्यूनतम 65% या उससे अधिक अंकों के साथ उत्तीर्ण होना चाहिए। कुल अनुभव न्यूनतम 10 वर्ष होना चाहिए, जिसमें से कम से कम 3 वर्ष टीम लीड के रूप में हो। आयु सीमा: अधिकतम 42 वर्ष। उम्मीदवार ने कम से कम दो पूर्ण-चक्र (full-cycle) सरकारी परियोजनाओं को संभाला हो।</p> <p>विशेष खंड: यदि एमबीए नहीं है, लेकिन 12+ वर्षों का अनुभव है जिसमें कम से कम 2 वर्ष विदेश का अनुभव शामिल है, और 3+ परियोजनाओं का नेतृत्व किया है → सलाहकार बोर्ड को भेजें। यदि परियोजनाओं की संख्या केवल एक है, लेकिन अन्य शर्तें पूरी तरह से मिलती हैं, तो इंफ्रास्ट्रक्चर आयोग को भेजें।</p> <p>मामला: स्नेहा के पास बी.टेक सिविल में 78% अंक हैं, कोई एमबीए नहीं है, 13 साल का अनुभव है जिसमें 3 साल विदेश का अनुभव शामिल है, और उसने 4 परियोजनाओं (सभी राज्य सरकार के लिए) का नेतृत्व किया है।</p> <p>प्रश्न: स्नेहा के मामले में क्या किया जाना चाहिए?</p> <p>Refer to Infrastructure Commission</p> <p>इंफ्रास्ट्रक्चर आयोग को भेजें।</p> <p>Refer to Advisory Board</p> <p>सलाहकार बोर्ड को भेजें।</p> <p>Reject the candidate</p> <p>अभ्यर्थी को अस्वीकार करें।</p> <p>Select the candidate</p> <p>उम्मीदवार का चयन करें।</p>
----------	--

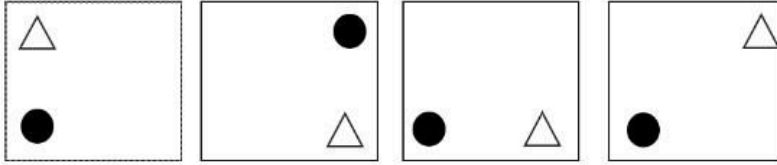
Q.No: 21	<p>What should be at the place of question mark?</p> <p>Question Figure:</p> <p>Answer Figure:</p> <p>A B C D</p>
----------	---

प्रश्न चिह्न के स्थान पर क्या होना चाहिए?

प्रश्न आकृति:



उत्तर आकृति:



A

B

C

D

A

A

D

D

C

C

B

B

Q.No: 22 You are Browse online forums and accidentally stumble upon a link to a publicly accessible cloud storage folder. Upon clicking it, you realize it contains hundreds of documents that appear to be sensitive personal data (like scanned passports, utility bills, and tax documents) belonging to various individuals, indicating a major privacy oversight. Given this situation, which of the following is the most ethical and responsible action?

आप ऑनलाइन फ़ोरम ब्राउज़ कर रहे हैं और गलती से एक ऐसे लिंक पर आ जाते हैं जो सार्वजनिक रूप से सुलभ क्लाउड स्टोरेज फ़ोल्डर का है। उस पर क्लिक करने पर, आपको पता चलता है कि इसमें सैकड़ों दस्तावेज़ हैं जो विभिन्न व्यक्तियों से संबंधित संवेदनशील व्यक्तिगत डेटा (जैसे स्कैन किए गए पासपोर्ट, यूटिलिटी बिल और टैक्स दस्तावेज़) प्रतीत होते हैं, जो एक बड़ी गोपनीयता चूक का संकेत देता है। इस स्थिति को देखते हुए, निम्नलिखित में से कौन सा सबसे नैतिक और जिम्मेदार कार्य है?

Immediately report the vulnerability to the platform's administrator or the relevant cybersecurity authority and avoid accessing the files further.

तत्काल प्लेटफ़ॉर्म के एडमिनिस्ट्रेटर या संबंधित साइबर सुरक्षा प्राधिकरण को इस भेद्यता की रिपोर्ट करें और फ़ाइलों को आगे एक्सेस करने से बचें।

Ignore the folder completely, as it's not your data and you don't want to get involved.

फ़ोल्डर को पूरी तरह से अनदेखा करें, क्योंकि यह आपका डेटा नहीं है और आप इसमें शामिल नहीं होना चाहते।

Download the files to save them, then try to contact a few of the individuals directly to warn them about their leaked data.

फ़ाइलों को सहेजने के लिए डाउनलोड करें, फिर कुछ व्यक्तियों से सीधे संपर्क करने का प्रयास करें ताकि उन्हें उनके लीक हुए डेटा के बारे में चेतावनी दी जा सके।

Copy the link and share it on social media to alert the public and expose the vulnerability.

लिंक को कॉपी करें और सार्वजनिक रूप से अलर्ट करने और भेद्यता को उजागर करने के लिए इसे सोशल मीडिया पर साझा करें।

Q.No: 23 If $5 + 3 = 23$, $6 + 4 = 34$, then $7 + 5 = ?$

यदि $5 + 3 = 23$, $6 + 4 = 34$, तो $7 + 5 = ?$

91

91

51

51

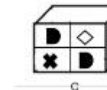
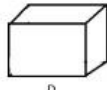
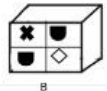
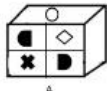
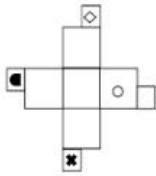
47

47

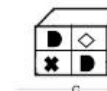
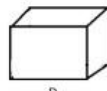
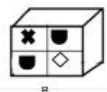
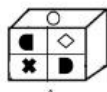
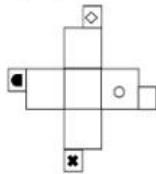
89

89

Q.No: 24 Select the possible cubes that can be formed by folding the given sheet.



दिए गए शीट को मोड़कर बनाए जा सकने वाले संभावित घनों का चयन करें।



A,C and D only

केवल A,C और D

B and C Only

केवल B और C

B,C,D only

केवल B,C,D

A,B,C only .

केवल A,B,C.

Not Answered

Q.No: 25 In each of the following questions, a specific relationship is given between two words. Identify the word that shares a similar semantic relationship with the given pair. Choose the most appropriate option from the four choices given below.

Painter : Canvas :: Author : ?

निम्नलिखित प्रत्येक प्रश्न में दो शब्दों के बीच एक विशिष्ट संबंध दिया गया है। उस शब्द की पहचान कीजिए जो दिए गए युग्म के साथ समान अर्थ संबंध साझा करता है। नीचे दिए गए चार विकल्पों में से सबसे उपयुक्त विकल्प चुनिए।

चित्रकार : कैनवास :: लेखक : ?

Pen

कलम

Publisher

प्रकाशक

Paper

कागज

Plot

कथानक

Q.No: 26 You find a wallet in your school library. What is the most appropriate action?

आपको अपने स्कूल की लाइब्रेरी में एक बटुआ मिलता है। सबसे उचित कार्रवाई क्या होगी?

Keep it for yourself and wait for someone to claim

इसे अपने पास रखें और किसी के दावा करने का इंतजार करें

Take the money and leave the wallet

पैसे ले लें और बटुआ छोड़ दें

Hand it over to the librarian or authority

इसे लाइब्रेरियन या अथॉरिटी को सौंप दें

Ignore it

इसे नजरअंदाज करें

Q.No: 27 Choose the missing number in the following analogy.

4 : 16 :: 6 : ?

निम्नलिखित सादृश्य में लुप्त संख्या चुनें।

4 : 16 :: 6 : ?

30

30

24

24

18

18

36

36

Q.No: 28 In a badminton knockout tournament with 57 players, what is the minimum number of matches needed to determine the winner?

57 खिलाड़ियों वाले एक बैडमिंटन नॉकआउट टूर्नामेंट में विजेता का निर्धारण करने के लिए न्यूनतम कितने मैचों की आवश्यकता है?

58

58

57

57

56

56

55

55

Not Answered

Q.No: 29 In each of the following questions, a specific relationship is given between two words. Identify the word that shares a similar semantic relationship with the given pair. Choose the most appropriate option from the four choices given below.

Fire : Heat :: Friction : ?

निम्नलिखित प्रत्येक प्रश्न में दो शब्दों के बीच एक विशिष्ट संबंध दिया गया है। उस शब्द की पहचान कीजिए जो दिए गए युग्म के साथ समान अर्थ संबंध साझा करता है। नीचे दिए गए चार विकल्पों में से सबसे उपयुक्त विकल्प चुनिए।

आग : ऊष्मा :: घर्षण : ?

Motion

गति

Force

बल

Burn

जलाना

Energy

ऊर्जा

Q.No: 30 If Δ means '+', \square means '-', ∇ means 'x', and \circ means '+', what is the value of: $12 \Delta 8 \nabla 3 \circ 6 \square 5 = ?$

अगर Δ का अर्थ '+' है, \square का अर्थ '-' है, ∇ का अर्थ 'x' है, और \circ का अर्थ '+' है, तो $12 \Delta 8 \nabla 3 \circ 6 \square 5 =$ का मान क्या है?

21

21

15

15

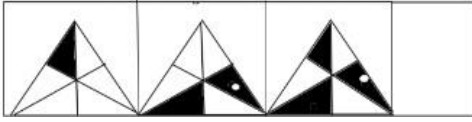
17

17

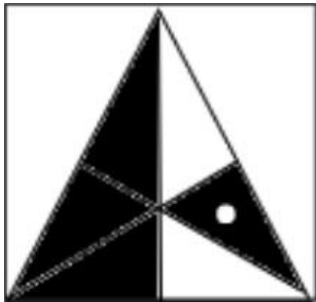
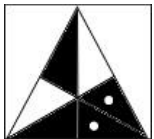
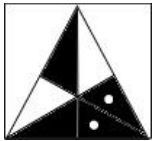

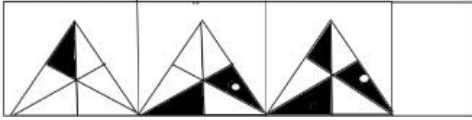


Q.No: 31

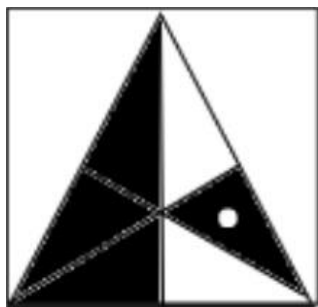
What will come at the place of blank space?



रिक्त स्थान के स्थान पर क्या आएगा?



KD Job Updates



Not Answered

Q.No: 32 You have four puzzle books on your shelf, and you decide to arrange them in every possible order, moving one book every 30 seconds. How long will it take to arrange all the books?

आपकी शेल्फ पर चार पहेली किताबें हैं, और आप उन्हें हर संभव क्रम में व्यवस्थित करने का फैसला करते हैं, हर 30 सेकंड में एक किताब को आगे बढ़ाते हैं। सभी किताबों को व्यवस्थित करने में कितना समय लगेगा?

24 minutes

24 मिनट

12 minutes

12 मिनट

2 minutes

2 मिनट

4 minutes

4 मिनट

Q.No: 33 If we assign positions to letters A=1, B=2, ..., Z=26, what is the index sum of the word CAT?

अगर हम अक्षरों को स्थान प्रदान करें A=1, B=2, ..., Z=26, तो शब्द CAT का सूचकांक योग क्या है?

27

27

24

24

41

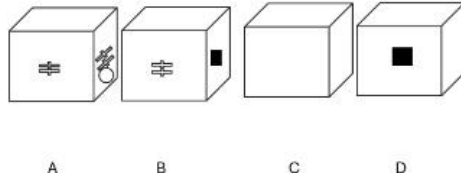
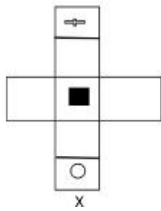
41

48

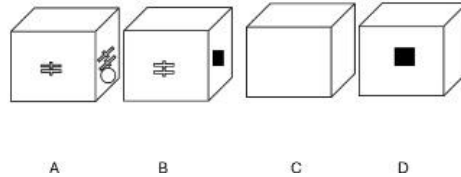
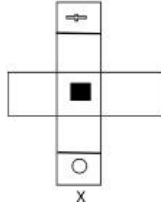
48

Q.No: 34

Choose the box that is similar to the box formed from the given sheet of paper (X).



उस बॉक्स को चुनें जो दिए गए कागज़ की शीट (X) से बने बॉक्स के समान है।



C and D only

केवल सी और डी

A, B, and C

ए, बी, और सी

B, C, and D

बी, सी, और डी

A and B

ए और बी

Not Answered

Q.No: 35

Read the information carefully and identify the correct relationship between the persons mentioned in the question.

A is the brother of B.

C is the mother of A.

D is the daughter of C.

E is the father of D.

Question: How is B related to E?

दी गई जानकारी को ध्यानपूर्वक पढ़ें और प्रश्न में उल्लिखित व्यक्तियों के बीच सही संबंध पहचानें।

A, B का भाई है।

C, A की माता है।

D, C की पुत्री है।

E, D का पिता है।

प्रश्न: B, E से किस प्रकार संबंधित है?

Son

बेटा

Wife

पत्नी

Cannot be determined

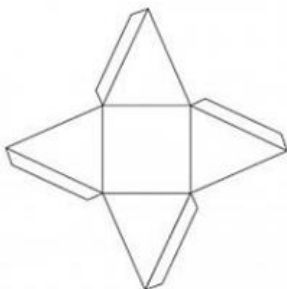
तय नहीं किया जा सकता

Daughter

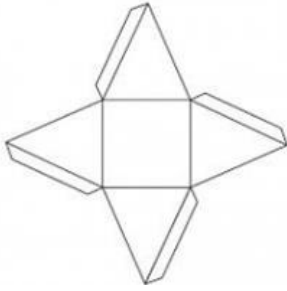
बेटी

Q.No: 36

Which of the following 3D shapes can be formed by folding the given 2D net?



दिए गए 2डी जाल को मोड़कर निम्नलिखित में से कौन सी 3डी आकृति बनाई जा सकती है?



Cube

घन

Cuboid

घनाभ

Pyramid

पिरामिड

Tetrahedron

चतुष्फलक

Not Answered

Q.No: 37 If ♥ : 2 :: ♣ : ?
अगर ♥ : 2 :: ♣ : ?

4

4

2

2

5

5

1

1

Q.No: 38 In each of the following questions, two numbers are given which follow a certain logical or arithmetic relationship. Identify the same pattern and apply it to find the missing number in the second pair. Choose the correct option from the given alternatives.

19384 : 31506 :: 28493 : ?

निम्नलिखित प्रत्येक प्रश्न में दो संख्याएँ दी गई हैं जो एक निश्चित तार्किक या अंकगणितीय संबंध का पालन करती हैं। समान पैटर्न की पहचान कीजिए और दूसरे जोड़े में लुप्त संख्या ज्ञात करने के लिए इसका प्रयोग कीजिए। दिए गए विकल्पों में से सही विकल्प चुनिए।

19384 : 31506 :: 28493 : ?

40615

40615

41706

41706

40617

40617

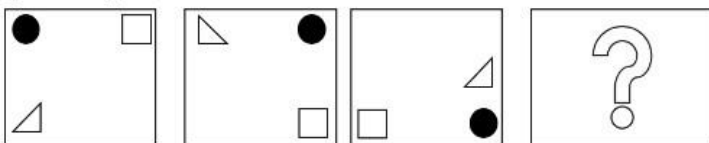
39615

39615

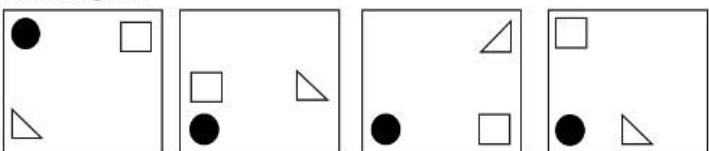
Q.No: 39

What should come at the place of question mark?

Question Figure:



Answer Figure:



A

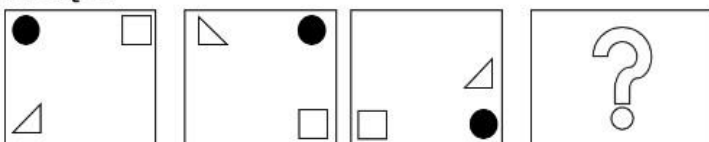
B

C

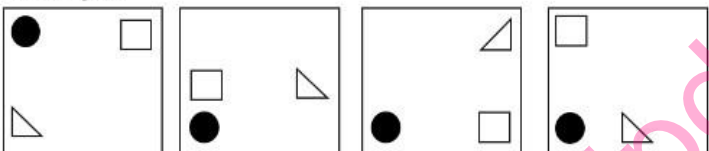
D

प्रश्न चिह्न के स्थान पर क्या आना चाहिए?

प्रश्न आकृति:



उत्तर आकृति:



A

B

C

D

C

C

D

D

A

A

B

B

Q.No: 40

Criteria to be selected as Assistant Manager (as on 01-04-2023):

MBA degree with at least 65% marks.

Age between 26 to 32 years.

Must have minimum 2 years of management experience.

Must be fluent in English and Hindi.

Special Clause:

If candidate meets all but the language requirement, refer to Language Proficiency Panel.

Case:

Tarun is 30 years old, has MBA with 70% marks, and 3 years experience. He is fluent in English but not confident in Hindi.

What should be done in Tarun's case?

सहायक प्रबंधक के रूप में चयन के मानदंड (01-04-2023 तक):

कम से कम 65% अंकों के साथ एमबीए की डिग्री।

आयु 26 से 32 वर्ष के बीच।

प्रबंधन का न्यूनतम 2 वर्ष का अनुभव होना आवश्यक है।

अंग्रेजी और हिंदी में धाराप्रवाह होना आवश्यक है।

विशेष खंड:

यदि उम्मीदवार भाषा की आवश्यकता को छोड़कर सभी आवश्यकताओं को पूरा करता है, तो भाषा दक्षता पैनल देखें।

मामला:

तरुण 30 वर्ष का है, उसके पास 70% अंकों के साथ एमबीए है, और 3 वर्ष का अनुभव है। वह अंग्रेजी में तो धाराप्रवाह है, लेकिन हिंदी में आत्मविश्वास नहीं रखता।

तरुण के मामले में क्या किया जाना चाहिए?

Select the candidate

उम्मीदवार का चयन करें

Reject the candidate

उम्मीदवार को अस्वीकार करें

Refer to Language Proficiency Panel

भाषा प्रवीणता पैनल देखें

Refer to Managing Director

प्रबंध निदेशक से संपर्क करें

Q.No: 41	What will be the alphabetical position index of the word DOG if all letters of the English alphabet are arranged in reverse order? अगर अंग्रेजी वर्णमाला के सभी अक्षरों को उल्टे क्रम में व्यवस्थित किया जाए तो शब्द DOG का वर्णमाला स्थान सूचकांक क्या होगा?
23, 13, 21	
23, 13, 21	
22, 12, 20	
22, 12, 20	
22, 13, 21	
22, 13, 21	
23, 12, 20	
23, 12, 20	

Q.No: 42	In each of the following questions, a number series is given. In each series, only one number is incorrect. Identify the wrong number. 2, 4, 8, 16, 34, 64 निम्नलिखित प्रत्येक प्रश्न में एक संख्या श्रृंखला दी गई है। प्रत्येक श्रृंखला में केवल एक संख्या गलत है। गलत संख्या पहचानिए। 2, 4, 8, 16, 34, 64
34	
34	
64	
64	
4	
4	
8	
8	

Q.No: 43

Which of the following follows the correct pattern of the question figure?

Question figure:

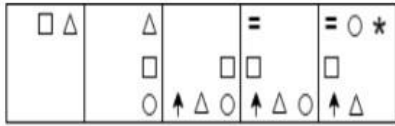
□ △	△	=	= ○ *
	□	□ □	□
	○ ↑ △ ○	↑ △ ○	↑ △

Answer figure:

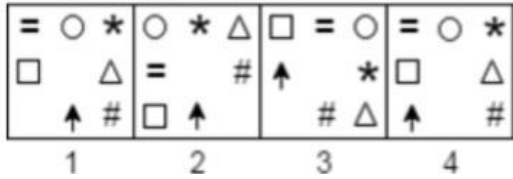
= ○ *	○ * △	□ = ○	= ○ *
□ △ = #	↑ *	□ △	
↑ # □ ↑	# △	↑	#
1	2	3	4

निम्नलिखित में से कौन सा प्रश्न आकृति के सही स्वरूप का अनुसरण करता है?

Question figure:



Answer figure:



3

3

1

1

2

2

4

4

Not Answered

Q.No: 44

If $3 + 2 = 15$, $4 + 3 = 28$, what is $5 + 4$?

अगर $3 + 2 = 15$, $4 + 3 = 28$, तो $5 + 4$ क्या है?

45

45

36

36

32

32

40

40

Q.No: 45

Choose the missing figure in the complex pattern.

● □ ● □ ● □ ● ?

जटिल पैटर्न में लुप्त आकृति चुनें।

● □ ● □ ● □ ● ?

■

■

●

●

●

●

□

□

Q.No: 46

Ramesh is taller than Suresh but shorter than Naresh. Naresh is taller than Umesh.

Who is tallest?

रमेश, सुरेश से लंबा है लेकिन नरेश से छोटा है। नरेश, उमेश से लंबा है।

सबसे लंबा कौन है?

Naresh

नरेश

Ramesh

रमेश
Suresh
सुरेश
Umesh
उमेश

Q.No: 47 In each of the following questions, a specific relationship is given between two words. Identify the word that shares a similar semantic relationship with the given pair. Choose the most appropriate option from the four choices given below.

Metaphor : Language :: Algorithm : ?

निम्नलिखित प्रत्येक प्रश्न में दो शब्दों के बीच एक विशिष्ट संबंध दिया गया है। उस शब्द की पहचान कीजिए जो दिए गए युग्म के साथ समान अर्थ संबंध साझा करता है। नीचे दिए गए चार विकल्पों में से सबसे उपयुक्त विकल्प चुनिए।

रूपक : भाषा :: एल्गोरिथ्म : ?

Instruction

अनुदेश

Process

प्रक्रिया

Mathematics

अंक शास्त्र

Computer

कंप्यूटर

Q.No: 48 What will come at the place of question mark?

A

B

C

?


A


B


C


?



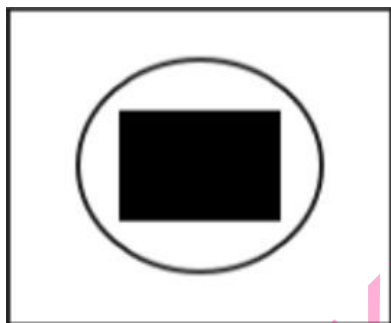
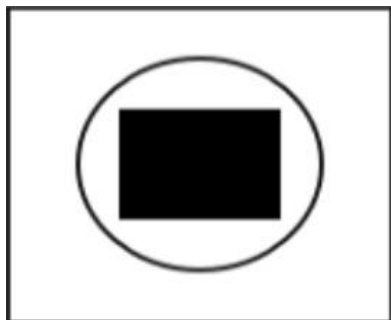

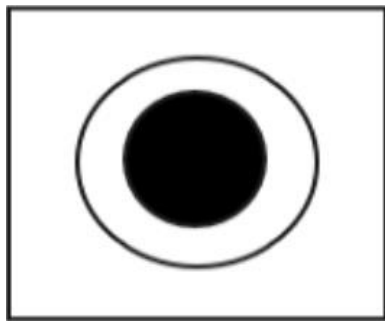
प्रश्न चिन्ह के स्थान पर क्या आएगा?







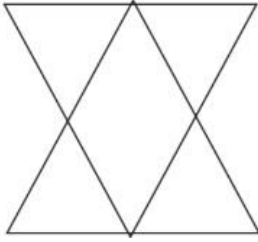




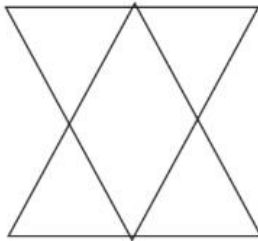
KD Job Updates

Q.No: 49

How many straight lines are there in the star figure?



तारे की आकृति में कितनी सीधी रेखाएँ हैं?



20

20

15

15

5

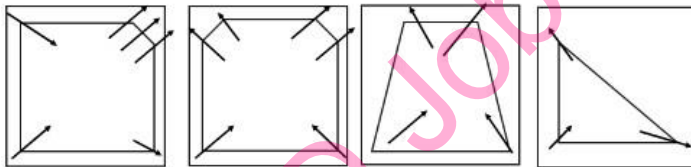
5

9

9

Q.No: 50

Choose the figure that is different from the rest in terms of the observed sequence or rule.



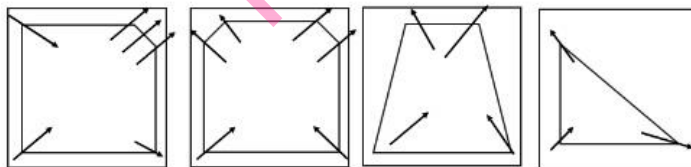
A

B

C

D

वह आकृति चुनें जो प्रेक्षित अनुक्रम या नियम के संदर्भ में बाकी से भिन्न है।



A

B

C

D

B

B

A

A

C

C

D

D

Q.No: 51	Which of the following statements best links a current conservation initiative for the Great Indian Bustard with its geographical location? निम्नलिखित में से कौन सा कथन ग्रेट इंडियन बस्टर्ड के लिए वर्तमान संरक्षण पहल को उसके भौगोलिक स्थान के साथ सबसे अच्छी तरह से जोड़ता है?
	National Avian Research Centre in Maharashtra conducted habitat simulation for GIB. महाराष्ट्र स्थित राष्ट्रीय एवियन अनुसंधान केंद्र ने जीआईबी के लिए आवास सिमुलेशन का आयोजन किया। Kalyan Sanctuary in Karnataka now houses the largest wild GIB population. कर्नाटक के कल्याण अभयारण्य में अब सबसे बड़ी जंगली जीआईबी आबादी है। India's first successful artificial insemination of GIB took place in the National Breeding Centre in Jaisalmer, Rajasthan. भारत में जीआईबी का पहला सफल कृत्रिम गर्भाधान राजस्थान के जैसलमेर स्थित राष्ट्रीय प्रजनन केंद्र में हुआ। A GIB conservation breeding centre was set up in Kutch, Gujarat for desert climate adaptation. रेगिस्तानी जलवायु अनुकूलन के लिए गुजरात के कच्छ में एक जीआईबी संरक्षण प्रजनन केंद्र स्थापित किया गया।

Q.No: 52	Match the column: स्तंभ का मिलान करें:																
	<table> <tr> <th>Column A (Conductor Type)</th><th>Column B (Mobile Charge Carriers)</th></tr> <tr> <td>A. Metal</td><td>1. Positive and negative ions</td></tr> <tr> <td>B. Ionised gas</td><td>2. Electrons and positively charged ions</td></tr> <tr> <td>C. Electrolyte</td><td>3. Electrons</td></tr> </table> <table> <tr> <th>कॉलम A (कंडक्टर प्रकार)</th><th>कॉलम B (मोबाइल चार्ज वाहक)</th></tr> <tr> <td>A. धातु</td><td>1. सकारात्मक और नकारात्मक आयन</td></tr> <tr> <td>B. आयनित गैस</td><td>2. इलेक्ट्रॉन और धनावेशित आयन</td></tr> <tr> <td>C. इलेक्ट्रोलाइट</td><td>3. इलेक्ट्रॉनों</td></tr> </table>	Column A (Conductor Type)	Column B (Mobile Charge Carriers)	A. Metal	1. Positive and negative ions	B. Ionised gas	2. Electrons and positively charged ions	C. Electrolyte	3. Electrons	कॉलम A (कंडक्टर प्रकार)	कॉलम B (मोबाइल चार्ज वाहक)	A. धातु	1. सकारात्मक और नकारात्मक आयन	B. आयनित गैस	2. इलेक्ट्रॉन और धनावेशित आयन	C. इलेक्ट्रोलाइट	3. इलेक्ट्रॉनों
Column A (Conductor Type)	Column B (Mobile Charge Carriers)																
A. Metal	1. Positive and negative ions																
B. Ionised gas	2. Electrons and positively charged ions																
C. Electrolyte	3. Electrons																
कॉलम A (कंडक्टर प्रकार)	कॉलम B (मोबाइल चार्ज वाहक)																
A. धातु	1. सकारात्मक और नकारात्मक आयन																
B. आयनित गैस	2. इलेक्ट्रॉन और धनावेशित आयन																
C. इलेक्ट्रोलाइट	3. इलेक्ट्रॉनों																
A-3, B-2, C-1 A-3, B-2, C-1 A-2, B-3, C-1 A-2, B-3, C-1 A-1, B-2, C-3 A-1, B-2, C-3 A-3, B-1, C-2 A-3, B-1, C-2																	

Q.No: 53	Which of the following statements are correct? (1) Birth rate measures the number of children born per 1000 people annually. (2) Pull factors include opportunities that attract people to new regions. (3) Death rate is always higher than birth rate. (4) Push factors can include civil unrest and lack of jobs. निम्नलिखित में से कौन सा कथन सही है? (1) जन्म दर प्रति वर्ष प्रति 1000 लोगों पर पैदा होने वाले बच्चों की संख्या को मापती है। (2) पुल कारकों में वे अवसर शामिल हैं जो लोगों को नए क्षेत्रों की ओर आकर्षित करते हैं। (3) मृत्यु दर हमेशा जन्म दर से अधिक होती है। (4) पुश कारकों में नागरिक अशांति और नौकरियों की कमी शामिल हो सकती है।
	All of the above ऊपर के सभी 2 and 3 only केवल 2 और 3 1, 2, and 4 only केवल 1, 2, और 4

1 and 3 only

केवल 1 और 3

Q.No: 54 What does the term 'capital formation' refer to in macroeconomics?
समष्टि अर्थशास्त्र में 'पूंजी निर्माण' (Capital Formation) किस प्रक्रिया को दर्शाता है?

Growth in production capacity through investment

निवेश के माध्यम से उत्पादन क्षमता में वृद्धि

Decrease in foreign direct investment

प्रत्यक्ष विदेशी निवेश में कमी

Expansion of consumer credit

उपभोक्ता ऋण का विस्तार

Increase in financial savings

वित्तीय बचत में वृद्धि

Q.No: 55 Which of the following North-Eastern states has areas governed under the Sixth Schedule?
निम्नलिखित में से किस पूर्वोत्तर राज्य के क्षेत्र छठी अनुसूची के अंतर्गत शासित हैं?

Tripura

त्रिपुरा

Manipur

मणिपुर

Nagaland

नगालैंड

Arunachal Pradesh

अरुणाचल प्रदेश

Q.No: 56 What is the punishment for abetment of an offense under the POCSO Act?
पॉक्सो अधिनियम के अंतर्गत किसी अपराध में उकसावे (abetment) के लिए क्या दंड निर्धारित है?

Same punishment as the offense

अपराध के लिए निर्धारित समान दंड

Half the punishment prescribed for the offense

मूल अपराध के लिए निर्धारित दंड का आधा

No punishment

कोई दंड नहीं

Community service

सामुदायिक सेवा

Q.No: 57 Which layer of the Earth's atmosphere is primarily responsible for absorbing ultraviolet radiation from the Sun?
पृथ्वी के वायुमंडल की कौन सी परत मुख्य रूप से सूर्य से पराबैंगनी विकिरण को अवशोषित करने के लिए जिम्मेदार है?

Thermosphere

थर्मोस्फीयर

Stratosphere

स्ट्रेटोस्फीयर

Mesosphere

मीसोस्फीयर

Troposphere

क्षोभ मंडल

Q.No: 58 In the context of Mughal administration, who were referred to as Shaikhzadas or Hindustanis?
मुगल प्रशासन के संदर्भ में किसे शेखजादा या हिंदुस्तानी कहा जाता था?

Central Asian nobles of Turkic origin serving the Mughals

मुगलों की सेवा करने वाले तुर्क मूल के मध्य एशियाई कुलीन

Rajput converts elevated to noble ranks for loyalty

राजपूतों को उनकी वफादारी के लिए महान पद पर पदोन्नत किया गया

Persian-trained officers recruited from Safavid Iran

सफ़वीद ईरान से भर्ती किए गए फ़ारसी-प्रशिक्षित अधिकारी

Indigenous Muslims who held administrative posts under Mughal rule

मुगल शासन के दौरान प्रशासनिक पदों पर आसीन रहे मूलनिवासी मुसलमान

Q.No: 59 Which of the following bodies has the power to create new All-India Services common to both the Union and the States?

निम्नलिखित में से किस निकाय को संघ और राज्यों दोनों के लिए सामान्य नई अखिल भारतीय सेवाएं बनाने की शक्ति है?

The President of India by issuing an executive order.

भारत के राष्ट्रपति ने एक कार्यकारी आदेश जारी करके यह निर्णय लिया है।

The Union Cabinet by a simple majority.

केन्द्रीय मंत्रिमंडल द्वारा साधारण बहुमत से पारित किया गया।

The Prime Minister with the consent of all Chief Ministers.

प्रधानमंत्री सभी मुख्यमंत्रियों की सहमति से।

The Parliament, provided the Rajya Sabha passes a resolution by a special majority.

संसद, बशर्ते कि राज्य सभा विशेष बहुमत से प्रस्ताव पारित करे।

Not Answered

Q.No: 60 Arrange the following RBI Governors in the correct chronological order of their tenure (from earliest to latest):

1. Dr. Y. V. Reddy
2. Dr. D. Subbarao
3. Dr. Urjit R. Patel
4. Shri Sanjay Malhotra

निम्नलिखित आरबीआई गवर्नरों को उनके कार्यकाल के सही कालानुक्रमिक क्रम में व्यवस्थित करें (प्रारंभिक से अंतिम तक):

1. डॉ. वाई. वी. रेड्डी
2. डॉ. डी. सुब्बाराव
3. डॉ. उर्जित आर. पटेल
4. श्री संजय मल्होत्रा

1, 3, 2, 4

1, 3, 2, 4

2, 3, 1, 4

2, 3, 1, 4

2, 1, 3, 4

2, 1, 3, 4

1, 2, 3, 4

1, 2, 3, 4

Q.No: 61 Which is the largest island of India in terms of area?

क्षेत्रफल की दृष्टि से भारत का सबसे बड़ा द्वीप कौन-सा है?

Rameswaram

रामेश्वरम

Great Nicobar Island

महानिकोबार द्वीप

Sriharikota

श्रीहरिकोटा

Majuli

माजुली द्वीप

Q.No: 62 Where was the National Shooting Championship 2024 held?

राष्ट्रीय निशानेबाजी चैम्पियनशिप 2024 कहाँ आयोजित की गई?

Bhubaneswar, Odisha

भुवनेश्वर, ओडिशा

Mumbai, Maharashtra

मुंबई, महाराष्ट्र

Panaji, Goa

पणजी, गोवा

Bhopal, Madhya Pradesh

भोपाल, मध्य प्रदेश

Q.No: 63 Which of the following is **correctly** matched with their leadership role in the Constituent Assembly (During the making of the Indian constitution)?

निम्नलिखित में से कौन संविधान सभा (भारतीय संविधान के निर्माण के दौरान) में उनकी नेतृत्वकारी भूमिका से सही सुमेलित है?

G.V. Mavalankar – Chairman of the Committee on the Functions of the Constituent Assembly

जी.वी. मावलंकर - संविधान सभा के कार्यों संबंधी समिति के अध्यक्ष

Dr. B.R. Ambedkar – Head of the Committee on the Functions of the Assembly

डॉ. बी.आर. अम्बेडकर - विधानसभा के कार्यों संबंधी समिति के प्रमुख

N. Gopalaswami Ayyangar – Chairman of the Order of Business Committee

एन. गोपालस्वामी अयंगर - ऑर्डर ऑफ बिजनेस कमेटी के अध्यक्ष

K.M. Munshi – Leader of the Committee on Fundamental Rights

के.एम. मुंशी - मौलिक अधिकारों पर समिति के नेता

Q.No: 64 Which of the following correctly pairs a monument with its architectural style?

निम्नलिखित में से कौन-सा स्मारक एवं उसकी वास्तुशैली का युग्म सही है?

Khajuraho Temples – French

खजुराहो मंदिर - फ्रांसीसी प्रभाव

Qutub Minar – Indo-Islamic

कुतुब मीनार - भारत-इस्लामी शैली

India Gate – Rajput

इंडिया गेट - राजपूत शैली

Lotus Temple – Mughal

लोटस टेम्पल - मुगल शैली

Q.No: 65 How did Second Generation Reforms impact foreign investment in India?

द्वितीय पीढ़ी के सुधारों का भारत में प्रत्यक्ष विदेशी निवेश (FDI) पर क्या प्रभाव पड़ा?

It reduced foreign investment

इससे विदेशी निवेश में गिरावट आई

It had no impact on foreign investment

विदेशी निवेश पर कोई प्रभाव नहीं पड़ा

It restricted foreign companies from entering India

विदेशी कंपनियों के भारत में प्रवेश पर प्रतिबंध

It increased foreign investment by improving the investment climate

निवेश वातावरण में सुधार कर विदेशी निवेश को बढ़ावा देना

Q.No: 66 Match the Following

Column A – Literary Work	Column B – Type
A. Naukar Ki Kameez	i. Poetry collection
B. Lagbhag Jai Hind	ii. Novel
C. Peed Par Kamra	iii. Short story collection
D. Woh Aadmi Chala Gaya	iv. Poem

निम्नलिखित का मिलान करें

कॉलम A – साहित्यिक कार्य	स्तंभ B – प्रकार
A. नौकर की कमीज	i. कविता संग्रह
B. लगभग जय हिंद	ii. उपन्यास
C. पीड पर कमरा	iii. लघु कहानी संग्रह
D. वो आदमी चला गया	iv. कविता

A-iii, B-ii, C-i, D-iv

A-iii, B-ii, C-i, D-iv

A-ii, B-i, C-iii, D-iv

A-ii, B-i, C-iii, D-iv

. A-i, B-ii, C-iv, D-iii

. A-i, B-ii, C-iv, D-iii

A-ii, B-iii, C-i, D-iv

A-ii, B-iii, C-i, D-iv

Not Answered

Q.No: 67 What is the radius of the centre circle in a football field?

एक फुटबॉल मैदान में केन्द्रीय वृत्त की त्रिज्या क्या है?

5.5 m

5.5 मीटर

10.5 m

10.5 मीटर

11 m

11 मीटर

9.15 m

9.15 मीटर

Not Answered

Q.No: 68 According to the Constitution of India, what is the quorum required to constitute a meeting of either House of Parliament?

भारतीय संविधान के अनुसार, संसद के किसी भी सदन की बैठक के लिए आवश्यक कोरम क्या है?

One-third of the total number of members of the House.

सदन के कुल सदस्यों की संख्या का एक तिहाई।

Fifty members in the Lok Sabha and twenty-five members in the Rajya Sabha.

लोक सभा में पचास सदस्य और राज्य सभा में पच्चीस सदस्य।

One-tenth of the total number of members of the House.

सदन के कुल सदस्यों की संख्या का दसवां हिस्सा।

One-fourth of the total number of members of the House.

सदन के कुल सदस्यों की संख्या का एक-चौथाई।

Q.No: 69 Which Indian Union Territory has the most Scheduled Castes?

किस भारतीय केंद्र शासित प्रदेश में अनुसूचित जातियाँ सबसे ज्यादा हैं?

Delhi

दिल्ली

Chandigarh

चंडीगढ़

Ladakh

लद्दाख

Lakshadweep

लक्षद्वीप

Q.No: 70 Which of the following best describes the main objective of the Indo-French Megha-Tropiques satellite mission?

निम्नलिखित में से कौन सा कथन भारत-फ्रांसीसी मेघा-ट्रॉपिक्स उपग्रह मिशन के मुख्य उद्देश्य का सबसे अच्छा वर्णन करता है?

Understanding convective systems and the water cycle in tropical regions

उष्णकटिबंधीय क्षेत्रों में संवहन प्रणालियों और जल चक्र को समझना

Studying polar ice melt and its impact on global sea levels

ध्रुवीय बर्फ के पिघलने और वैश्विक समुद्री स्तर पर इसके प्रभाव का अध्ययन

Mapping mineral resources in the Himalayan region

हिमालयी क्षेत्र में खनिज संसाधनों का मानचित्रण

Monitoring ozone depletion over the equator

भूमध्य रेखा पर ओजोन क्षरण की निगरानी

Q.No: 71 The "Golden Boot" is awarded in which sport?

गोल्डन बूट पुरस्कार किस खेल में प्रदान किया जाता है?

Cricket

क्रिकेट

Baseball

बेसबॉल

Hockey

हॉकी

Football

फुटबॉल

Q.No: 72 The regulatory framework adopted by India between 1947 and 1990, often referred to as the "License Raj," aimed to direct economic activity. While it had certain intended benefits, what was a significant unintended negative consequence often associated with this system?

1947 और 1990 के बीच भारत द्वारा अपनाए गए विनियामक ढांचे को अक्सर "लाइसेंस राज" के रूप में संदर्भित किया जाता है, जिसका उद्देश्य आर्थिक गतिविधि को निर्देशित करना था। हालाँकि इसके कुछ इच्छित लाभ थे, लेकिन इस प्रणाली से अक्सर जुड़ा एक महत्वपूर्ण अनपेक्षित नकारात्मक परिणाम क्या था?

The creation of barriers to entry for new businesses potentially stifling innovation and leading to inefficiencies.

नए व्यवसायों के प्रवेश में बाधाएं उत्पन्न होने से नवाचार में बाधा उत्पन्न हो सकती है तथा अकुशलताएं पैदा हो सकती हैं।

A significant reduction in corruption and bureaucratic delays in obtaining necessary approvals for economic activities.

आर्थिक गतिविधियों के लिए ज़रूरी अनुमोदन प्राप्त करने में भ्रष्टाचार और नौकरशाही देरी में उल्लेखनीय कमी।

A rapid increase in the quality and global competitiveness of Indian-made goods due to stringent quality control measures.

कड़े गुणवत्ता नियंत्रण उपायों के कारण भारतीय निर्मित वस्तुओं की गुणवत्ता और वैश्विक प्रतिस्पर्धात्मकता में तेजी से वृद्धि।

The fostering of a highly competitive market environment with numerous players in each industry.

प्रत्येक उद्योग में अनेक खिलाड़ियों के साथ अत्यधिक प्रतिस्पर्धी बाजार वातावरण को बढ़ावा देना।

Q.No: 73 Given below are the two columns. Column A consists of Events or terms and column B consist of correct descriptions. Match the column A with correct description in Column B

Column A	Column B
A. Anglo-Russian rivalry	1. Opened Sindh's rivers and roads to British trade.
B. Subsidiary Treaty 1839	2. Forced on the Amirs of Sindh before annexation.
C. Sir Charles Napier	3. Had commercial value; attracted British interest.
D. River Sindh	4. Led military campaign to annex Sindh; called it a "rascality."
E. Treaty of 1832	5. Led Britain to expand influence in Afghanistan and Persia

नीचे दो कॉलम दिए गए हैं। कॉलम A में घटनाएँ या शब्द हैं और कॉलम B में सही विवरण हैं। कॉलम A का मिलान कॉलम B में दिए गए सही विवरण से करें

स्तंभ A	स्तंभ B
A. एंग्लो-रूसी प्रतिद्वंद्विता	1. सिंध की नदियों और सड़कों को ब्रिटिश व्यापार के लिए खोल दिया।
B. सहायक संधि 1839	2. विलय से पहले सिंध के अमीरों पर थोपा गया।
C. सर चार्ल्स नेपियर	3. इसका वाणिज्यिक महत्व था; इसने ब्रिटिश रुचि को आकर्षित किया।
D. सिंध नदी	4. सिंध को अपने अधीन करने के लिए सैन्य अभियान का नेतृत्व किया; इसे "दुष्टता" कहा।
E. 1832 की संधि	5. ब्रिटेन को अफगानिस्तान और फारस में अपना प्रभाव बढ़ाने में मदद की

A-5, B-2, C-4, D-3, E-1

A-5, B-2, C-4, D-3, E-1

A-1, B-5, C-2, D-4, E-3

A-1, B-5, C-2, D-4, E-3

A-2, B-4, C-3, D-1, E-5

A-2, B-4, C-3, D-1, E-5

A-4, B-1, C-5, D-2, E-3

A-4, B-1, C-5, D-2, E-3

Q.No: 74 Which classical dance form originated in Andhra Pradesh and incorporates both singing and dancing?

कौन-सा शास्त्रीय नृत्य आंध्र प्रदेश से उत्पन्न हुआ है और इसमें गायन एवं नृत्य दोनों सम्मिलित होते हैं?

Manipuri

मणिपुरी

Kathakali

कथकली

Mohiniyattam

मोहिनीयाट्टम

Kuchipudi

कूचिपुड़ी

Q.No: 75 Ganesh Chaturthi, celebrated widely in Maharashtra, is associated with:

गणेश चतुर्थी, जो विशेष रूप से महाराष्ट्र में व्यापक रूप से मनाई जाती है, किससे संबंधित है?

The descent of Ganga

गंगा का पृथ्वी पर अवतरण

The marriage of Shiva and Parvati

भगवान शिव और पार्वती का विवाह

The birth of Lord Ganesha

भगवान गणेश का जन्म

The return of Krishna to Mathura

कृष्ण का मथुरा लौटना

Q.No: 76 The PM-MITRA scheme is focused on which of the following objectives?

पीएम-मित्र योजना निम्नलिखित में से किस उद्देश्य पर केंद्रित है?

Expanding petroleum retail chains

पेट्रोलियम खुदरा श्रृंखलाओं का विस्तार

Enhancing textile exports and setting up large textile parks

वस्त्र निर्यात को बढ़ावा देना और बड़े वस्त्र पार्कों की स्थापना करना

Creating rail-based infrastructure hubs

रेल-आधारित बुनियादी ढांचा केंद्र बनाना

Providing smart classrooms in rural schools

ग्रामीण स्कूलों में स्मार्ट कक्षाएँ उपलब्ध कराना

Q.No: 77 What is one of the major benefits of providing Geographical Indication (GI) tags to local products made by rural artisans?

ग्रामीण कारीगरों द्वारा बनाए गए स्थानीय उत्पादों को भौगोलिक संकेत (जीआई) टैग प्रदान करने का एक प्रमुख लाभ क्या है?

It increases dependency on imported goods

इससे आयातित वस्तुओं पर निर्भरता बढ़ जाती है

It helps preserve traditional knowledge and boosts rural incomes

इससे पारंपरिक ज्ञान को संरक्षित करने और ग्रामीण आय को बढ़ाने में मदद मिलती है

It removes the need for skill development in rural areas

इससे ग्रामीण क्षेत्रों में कौशल विकास की आवश्यकता समाप्त हो जाती है

It allows unrestricted copying of the product by other regions

यह अन्य क्षेत्रों द्वारा उत्पाद की अप्रतिबंधित प्रतिलिपि बनाने की अनुमति देता है

Q.No: 78 Which country withdrew from the NPT in 2003 and later developed nuclear weapons?

कौन सा देश 2003 में एनपीटी से हट गया और बाद में परमाणु हथियार विकसित कर लिया?

Israel

इजराइल

North Korea

उत्तर कोरिया

Syria

सीरिया

Iran

ईरान

Q.No: 79 Name the organization that made the Golden Quadrilateral Project connecting major cities of India feasible?

भारत के प्रमुख नगरों को आपस में जोड़ने वाली 'स्वर्णिम चतुर्भुज परियोजना' को लागू करने वाली संस्था का नाम क्या है?

National Highways Authority of India (NHAI)

भारतीय राष्ट्रीय राजमार्ग प्राधिकरण (NHAI)

Indian Railways

भारतीय रेल

Ministry of Urban Development

शहरी विकास मंत्रालय

Border Roads Organization (BRO)

सीमा सड़क संगठन (बीआरओ)

Q.No: 80	<p>In the following questions, a statement of Assertion (A) is followed by a statement of Reason (R). Select the correct option from the following:</p> <p>Assertion (A): Rows of circular brick platforms at Harappa were used for religious ceremonies.</p> <p>Reason (R): These platforms were found to contain wheat and barley grains.</p> <p>निम्नलिखित प्रश्नों में, अभिकथन (A) के कथन के बाद कारण (R) का कथन दिया गया है।</p> <p>निम्नलिखित में से सही विकल्प चुनें:</p> <p>अभिकथन (A): हड़प्पा में गोलाकार ईंटों के चबूतरों की पंक्तियों का उपयोग धार्मिक समारोहों के लिए किया जाता था।</p> <p>कारण (R): इन चबूतरों पर गेहूँ और जौ के दाने पाए गए थे।</p>
<p>Both A and R are false</p> <p>A और R दोनों असत्य हैं</p> <p>Both A and R are true, and R explains A</p> <p>A और R दोनों सत्य हैं, तथा R, A की व्याख्या करता है</p> <p>Both A and R are true, but R does not explain A</p> <p>A और R दोनों सत्य हैं, लेकिन R, A की व्याख्या नहीं करता है</p> <p>A is false, but R is true</p> <p>A असत्य है, लेकिन R सत्य है</p>	
Q.No: 81	<p>The Alaknanda River originates from which of the following?</p> <p>अलकनंदा नदी का उद्गम स्थल निम्नलिखित में से कौन-सा है?</p>
<p>Satopanth Glacier</p> <p>सातोपंथ हिमनद</p> <p>Zemu Glacier</p> <p>ज़ेमु हिमनद</p> <p>Milam Glacier</p> <p>मिलम हिमनद</p> <p>Gangotri Glacier</p> <p>गंगोत्री हिमनद</p>	
Q.No: 82	<p>Which pair is correctly matched with India's geopolitical interest?</p> <p>कौन सा युग्म भारत के भू-राजनीतिक हित से सही ढंग से मेल खाता है?</p>
<p>Ashgabat Agreement – Partnership with BIMSTEC</p> <p>अश्गाबात समझौता - बिमस्टेक के साथ साझेदारी</p> <p>Kaladan Project – Links to Iran</p> <p>कलादान परियोजना - ईरान से लिंक</p> <p>Ladakh Corridor – Access to Africa</p> <p>लद्दाख कॉरिडोर - अफ्रीका तक पहुंच</p> <p>SAGAR Policy – Maritime ties in the Indian Ocean</p> <p>सागर नीति - हिंद महासागर में समुद्री संबंध</p>	
Q.No: 83	<p>Which of the following is NOT a direct outcome of using the Happiness Index?</p> <p>निम्नलिखित में से कौन-सा हैप्पीनेस इंडेक्स के उपयोग का प्रत्यक्ष परिणाम नहीं है?</p>
<p>Monitoring population growth</p> <p>जनसंख्या वृद्धि की निगरानी</p> <p>Creating education policies</p> <p>शिक्षा नीतियाँ बनाना</p> <p>Improving healthcare services</p> <p>स्वास्थ्य सेवाओं में सुधार</p> <p>Enhancing social services</p> <p>सामाजिक सेवाओं का सुदृढ़ीकरण</p>	

Q.No: 84	What significant institutional development emerged from banking reforms after 1991 to regulate financial stability? वित्तीय स्थिरता को विनियमित करने के लिए 1991 के बाद बैंकिंग सुधारों से कौन सा महत्वपूर्ण संस्थागत विकास सामने आया?
Board for Financial Supervision (BFS)	
वित्तीय पर्यवेक्षण बोर्ड (BFS)	
NABARD	
नाबार्ड	
Securities Appellate Tribunal (SAT)	
प्रतिभूति अपीलीय न्यायाधिकरण (SAT)	
MSME Credit Bureau	
एमएसएमई क्रेडिट ब्यूरो	
Not Answered	

Q.No: 85	Match the following Indexes with their respective Publishing Organizations: <table border="1"> <thead> <tr> <th>Column A – Index</th><th>Column B – Publishing Organization</th></tr> </thead> <tbody> <tr> <td>A. Global Innovation Index</td><td>1. United Nations Development Programme (UNDP)</td></tr> <tr> <td>B. Global Hunger Index</td><td>2. World Intellectual Property Organization (WIPO)</td></tr> <tr> <td>C. Global Peace Index</td><td>3. Concern Worldwide and Welthungerhilfe</td></tr> <tr> <td>D. Human Development Index (HDI)</td><td>4. Institute for Economics and Peace (IEP)</td></tr> </tbody> </table> निम्नलिखित अनुक्रमितों का उनके संबंधित प्रकाशन संगठनों से मिलान करें: <table border="1"> <thead> <tr> <th>स्तंभ A – सूचकांक</th><th>स्तंभ B – प्रकाशन संगठन</th></tr> </thead> <tbody> <tr> <td>A. वैश्विक नवाचार सूचकांक</td><td>1. संयुक्त राष्ट्र विकास कार्यक्रम (UNDP)</td></tr> <tr> <td>B. वैश्विक भूख सूचकांक</td><td>2. विश्व बौद्धिक संपदा संगठन (WIPO)</td></tr> <tr> <td>C. वैश्विक शांति सूचकांक</td><td>3. कन्सर्न वर्ल्डवाइड और वेल्थहंगरहिल्फे</td></tr> <tr> <td>D. मानव विकास सूचकांक (HDI)</td><td>4. अर्थशास्त्र और शांति संस्थान (IEP)</td></tr> </tbody> </table>	Column A – Index	Column B – Publishing Organization	A. Global Innovation Index	1. United Nations Development Programme (UNDP)	B. Global Hunger Index	2. World Intellectual Property Organization (WIPO)	C. Global Peace Index	3. Concern Worldwide and Welthungerhilfe	D. Human Development Index (HDI)	4. Institute for Economics and Peace (IEP)	स्तंभ A – सूचकांक	स्तंभ B – प्रकाशन संगठन	A. वैश्विक नवाचार सूचकांक	1. संयुक्त राष्ट्र विकास कार्यक्रम (UNDP)	B. वैश्विक भूख सूचकांक	2. विश्व बौद्धिक संपदा संगठन (WIPO)	C. वैश्विक शांति सूचकांक	3. कन्सर्न वर्ल्डवाइड और वेल्थहंगरहिल्फे	D. मानव विकास सूचकांक (HDI)	4. अर्थशास्त्र और शांति संस्थान (IEP)
Column A – Index	Column B – Publishing Organization																				
A. Global Innovation Index	1. United Nations Development Programme (UNDP)																				
B. Global Hunger Index	2. World Intellectual Property Organization (WIPO)																				
C. Global Peace Index	3. Concern Worldwide and Welthungerhilfe																				
D. Human Development Index (HDI)	4. Institute for Economics and Peace (IEP)																				
स्तंभ A – सूचकांक	स्तंभ B – प्रकाशन संगठन																				
A. वैश्विक नवाचार सूचकांक	1. संयुक्त राष्ट्र विकास कार्यक्रम (UNDP)																				
B. वैश्विक भूख सूचकांक	2. विश्व बौद्धिक संपदा संगठन (WIPO)																				
C. वैश्विक शांति सूचकांक	3. कन्सर्न वर्ल्डवाइड और वेल्थहंगरहिल्फे																				
D. मानव विकास सूचकांक (HDI)	4. अर्थशास्त्र और शांति संस्थान (IEP)																				
A-3, B-2, C-1, D-4																					
A-3, B-2, C-1, D-4																					
A-4, B-2, C-3, D-1																					
A-4, B-2, C-3, D-1																					
A-2, B-1, C-3, D-4																					
A-2, B-1, C-3, D-4																					
A-2, B-3, C-4, D-1																					
A-2, B-3, C-4, D-1																					

Q.No: 86	What is the role of National Parks under the Wildlife Protection Act, 1972? वन्यजीव संरक्षण अधिनियम, 1972 के अंतर्गत राष्ट्रीय उद्यानों की भूमिका क्या है?
To promote tourism पर्यटन को बढ़ावा देने के लिए	
To protect wildlife and their habitats वन्यजीवों एवं उनके प्राकृतिक आवास की सुरक्षा हेतु	
To regulate trade व्यापार को नियंत्रित करने के लिए	

To oversee elections

चुनावों की निगरानी हेतु

Q.No: 87 Which of the following is a unique characteristic of sponges (Phylum Porifera)?

निम्नलिखित में से कौन स्पंज (फाइलम पोरिफेरा) की एक अनूठी विशेषता है?

Water canal system and choanocytes

जल नलिका प्रणाली और कोआनोसाइट्स

Radial symmetry and presence of tentacles

रेडियल समरूपता और स्पर्शकों की उपस्थिति

Jointed appendages and chitinous exoskeleton

संयुक्त उपांग और काइटिनस बाह्यकंकाल

Presence of cnidoblasts for defense

रक्षा के लिए निडोब्लास्ट्स की उपस्थिति

Q.No: 88 Who was invited as the chief guest for India's 76th Republic Day celebrations on January 26, 2025?

26 जनवरी, 2025 को भारत के 76वें गणतंत्र दिवस समारोह के लिए मुख्य अतिथि के रूप में किसे आमंत्रित किया गया है?

Joko Widodo

जोको विडोडो

Ferdinand Marcos Jr.

फर्डिनेंड मार्कोस जूनियर.

Anwar Ibrahim

अनवर इब्राहिम

Prabowo Subianto

प्रबोवो सुबियांटो

Q.No: 89 The Industrial Policy Resolution of 1948 aimed at:

1948 के औद्योगिक नीति प्रस्ताव का उद्देश्य था:

Privatizing industries

उद्योगों का निजीकरण

Developing rural areas

ग्रामीण क्षेत्रों का विकास

Opening up foreign trade

विदेशी व्यापार को खोलना

Promoting public sector

सार्वजनिक क्षेत्र को बढ़ावा देना

Q.No: 90 Two resistors named R1 and R2, are connected in parallel. If $R1 < R2$, what can be inferred about the current flowing through them, given the same potential difference across both?

R1 और R2 नामक दो प्रतिरोधक समांतर क्रम में जुड़े हुए हैं। यदि $R1 < R2$ है, तो दोनों के बीच समान विभवांतर होने पर, उनमें प्रवाहित धारा के बारे में क्या अनुमान लगाया जा सकता है?

Current through R1 is less than through R2.

R1 से प्रवाहित धारा, R2 से प्रवाहित धारा से कम है।

Current through R1 is equal to current through R2.

R1 से प्रवाहित धारा, R2 से प्रवाहित धारा के बराबर है।

Current through R1 is greater than through R2.

R1 से प्रवाहित धारा, R2 से प्रवाहित धारा से अधिक है।

The current ratio depends on the supply voltage.

धारा अनुपात आपूर्ति वोल्टेज पर निर्भर करता है।

Not Answered

Q.No: 91	What was the objective of the Swachh Bharat Abhiyan? स्वच्छ भारत अभियान का उद्देश्य क्या था?
Achieving universal sanitation coverage	
सार्वभौमिक स्वच्छता कवरेज प्राप्त करना	
Promoting digital payments	
डिजिटल भुगतान को बढ़ावा देना	
Providing rural housing	
ग्रामीण आवास उपलब्ध कराना	
Creating jobs in the rural sector	
ग्रामीण क्षेत्र में रोजगार सृजन	

Q.No: 92	Who among the following is related to the Parakram Diwas? निम्नलिखित में से कौन पराक्रम दिवस से संबंधित है?
Subhash Bose	
सुभाष बोस	
Azad	
आजाद	
Mahatma Gandhi	
महात्मा गांधी	
Bhagat Singh	
भगत सिंह	

Q.No: 93	If "a soldier fires on a mob by the order of his superior officer, in conformity with the law". According to the Bharatiya Nyaya Sanhita, 2023, has he committed an offence? यदि "कोई सैनिक अपने वरिष्ठ अधिकारी के आदेश पर, कानून के अनुरूप, भीड़ पर गोली चलाता है" तो भारतीय न्याय संहिता, 2023 के अनुसार, क्या उसने कोई अपराध किया है?
Yes, because he could have disobeyed	
हाँ, क्योंकि वह अवज्ञा कर सकता था	
Yes, because violence is punishable	
हाँ, क्योंकि हिंसा दंडनीय है	
No, because he followed public orders	
नहीं, क्योंकि उन्होंने सार्वजनिक आदेशों का पालन किया	
No, because he believed in good faith that he was bound by law	
नहीं, क्योंकि वह सद्भावनापूर्वक मानता था कि वह कानून से बंधा हुआ है	

Q.No: 94	High honey yield and gentle behaviour in bees for commercial beekeeping can be achieved through one of the following methods: व्यावसायिक मधुमक्खी पालन के लिए उच्च शहद उत्पादन और मधुमक्खियों में सौम्य व्यवहार निम्नलिखित विधियों में से किसी एक के माध्यम से प्राप्त किया जा सकता है:
Using wild bee species with aggressive defence traits	
आक्रामक रक्षा गुणों वाली जंगली मधुमक्खी प्रजातियों का उपयोग करना	
Frequently relocating hives to prevent bees from settling	
मधुमक्खियों को बसने से रोकने के लिए छत्तों को बार-बार स्थानांतरित करना	
Avoiding bee farms and relying solely on natural honey collection	
मधुमक्खी फार्मों से बचना और केवल प्राकृतिक शहद संग्रह पर निर्भर रहना	
Introducing Italian bees that collect more honey and remain in hives longer	
इतालवी मधुमक्खियों का परिचय जो अधिक शहद एकत्र करती हैं और लंबे समय तक छत्तों में रहती हैं	

Q.No: 95	Who headed the Credentials Committee in the Constituent Assembly? संविधान सभा में क्रेडेंशियल्स समिति का नेतृत्व किसने किया था?
Alladi Krishnaswamy Aiyar	
अल्लादी कृष्णस्वामी अय्यर	

T.T. Krishnamachari

टी.टी. कृष्णमाचारी

Jawaharlal Nehru

जवाहरलाल नेहरू

K.M. Munshi

के.एम. मुंशी

Not Answered

Q.No: 96 Which of the following is a prominent form of Hindustani classical vocal music?

हिंदुस्तानी शास्त्रीय गायन की प्रमुख विधाओं में से एक कौन-सी है?

Kathak

कथक

Dhrupad

ध्रुपद

Bharatnatyam

भरतनाट्यम

Kuchipudi

कुचिपुड़ी

Q.No: 97 Which of the following is NOT a primary factor affecting the variation of insolation on Earth?

निम्नलिखित में से कौन सा पृथ्वी पर सूर्यातप की भिन्नता को प्रभावित करने वाला प्राथमिक कारक नहीं है?

Presence of water bodies in an area

किसी क्षेत्र में जल निकायों की उपस्थिति

Rotation of the Earth on its axis

पृथ्वी का अपनी धुरी पर घूमना

Transparency of the atmosphere

वातावरण की पारदर्शिता

Angle of inclination of the Sun's rays

सूर्य की किरणों का झुकाव कोण

Q.No: 98 According to Keynesian theory, during recession, what should the government ideally do?

कीन्सियन सिद्धांत के अनुसार, मंदी के दौरान सरकार को आदर्श रूप से क्या करना चाहिए?

Increase interest rates

ब्याज दरें बढ़ाएँ

Increase spending and cut taxes

खर्च बढ़ाएँ और करों में कटौती करें

Promote imports

आयात को बढ़ावा देना

Reduce spending

खर्च कम करें

Q.No: 99 SpaDeX mission is related to ____.

स्पेडेक्स मिशन ____ से संबंधित है।

Artificial intelligence

कृत्रिम होशियारी

Space docking

अंतरिक्ष डॉकिंग

Space farming

अंतरिक्ष खेती

Planetary geology

ग्रहीय भूविज्ञान

Q.No: 100 Which of the following systems can be affected by a solar storm?

1. GPS signal accuracy
2. Power transmission systems
3. Submarine communication cables
4. Pipeline infrastructure

निम्नलिखित में से कौन सी प्रणाली सौर तूफान से प्रभावित हो सकती है?

1. जीपीएस सिग्नल सटीकता
2. पावर ट्रांसमिशन सिस्टम
3. पनडुब्बी संचार केबल
4. पाइपलाइन अवसंरचना

2 and 3 only

केवल 2 और 3

1 and 2 only

केवल 1 और 2

3 and 4 only

केवल 3 और 4

1,2,3, and 4 all of these

1,2,3, और 4 ये सभी

PART - C (English Language and Comprehension)

Q.No: 101 Find the antonym of 'Impute'.

Support

Energetic

Cheerful

Lively

Q.No: 102 Read the following passage and answer the questions based on the passage:

Universal immunization campaigns have eradicated or controlled fatal conditions such as smallpox and polio. Mass immunization relies on cold-chain availability: vaccines have to be stored at precise temperatures from manufacturing through inoculation. Solar-powered refrigerators and insulated containers are lifelines for remote locations. Door-to-door interactions by community health workers educate households regarding dosage routines and myths. Vaccine hesitancy fueled by misinformation is also a major obstacle to herd immunity. Campaigns of public education—capitalizing on radio, social media, and school initiatives—seek to revive public faith in science. Preserving accessibility and communication in an open nature is crucial in order to secure public health.

What does "cold-chain logistics" refer to in the passage?

Transporting vaccines under controlled temperatures

Selling vaccines in cold climates

Developing new vaccine formulas

Distributing medicines door-to-door

Q.No: 103 Read the following passage and answer the questions based on the passage:

Universal immunization campaigns have eradicated or controlled fatal conditions such as smallpox and polio. Mass immunization relies on cold-chain availability: vaccines have to be stored at precise temperatures from manufacturing through inoculation. Solar-powered refrigerators and insulated containers are lifelines for remote locations. Door-to-door interactions by community health workers educate households regarding dosage routines and myths. Vaccine hesitancy fueled by misinformation is also a major obstacle to herd immunity. Campaigns of public education—capitalizing on radio, social media, and school initiatives—seek to revive public faith in science. Preserving accessibility and communication in an open nature is crucial in order to secure public health.

According to the passage, which method helps maintain vaccine potency in remote areas?

Air-conditioned cars

Solar-powered refrigerators

Vaccine-heated containers

Underground storage

Q.No: 104 Read the following passage and answer the questions based on the passage:

Universal immunization campaigns have eradicated or controlled fatal conditions such as smallpox and polio. Mass immunization relies on cold-chain availability: vaccines have to be stored at precise temperatures from manufacturing through inoculation. Solar-powered refrigerators and insulated containers are lifelines for remote locations. Door-to-door interactions by community health workers educate households regarding dosage routines and myths. Vaccine hesitancy fueled by misinformation is also a major obstacle to herd immunity. Campaigns of public education—capitalizing on radio, social media, and school initiatives—seek to revive public faith in science. Preserving accessibility and communication in an open nature is crucial in order to secure public health.

Vaccine hesitancy is primarily caused by:

Lack of refrigerators

Misinformation

Cold-chain failures

Overproduction

Q.No: 105 Read the following passage and answer the questions based on the passage:

Universal immunization campaigns have eradicated or controlled fatal conditions such as smallpox and polio. Mass immunization relies on cold-chain availability: vaccines have to be stored at precise temperatures from manufacturing through inoculation. Solar-powered refrigerators and insulated containers are lifelines for remote locations. Door-to-door interactions by community health workers educate households regarding dosage routines and myths. Vaccine hesitancy fueled by misinformation is also a major obstacle to herd immunity. Campaigns of public education—capitalizing on radio, social media, and school initiatives—seek to revive public faith in science. Preserving accessibility and communication in an open nature is crucial in order to secure public health.

Which strategy is NOT mentioned as part of public education initiatives?

Radio broadcasts

Social-media influencers

School programs

Financial incentives

Q.No: 106 Read the following passage and answer the questions based on the passage:

Universal immunization campaigns have eradicated or controlled fatal conditions such as smallpox and polio. Mass immunization relies on cold-chain availability: vaccines have to be stored at precise temperatures from manufacturing through inoculation. Solar-powered refrigerators and insulated containers are lifelines for remote locations. Door-to-door interactions by community health workers educate households regarding dosage routines and myths. Vaccine hesitancy fueled by misinformation is also a major obstacle to herd immunity. Campaigns of public education—capitalizing on radio, social media, and school initiatives—seek to revive public faith in science. Preserving accessibility and communication in an open nature is crucial in order to secure public health.

The passage suggests that to protect public health, it is essential to:

Eliminate door-to-door visits

Halt solar-powered technology

Ensure equitable access and clear communication

Focus solely on urban areas

Q.No: 107	<p>Read the following passage and answer the questions based on the passage:</p> <p>Microfinance institutions (MFIs) have become crucial agents for advancing financial inclusion in rural areas. Through extending small loans and savings accounts to people who don't have access to conventional banks, MFIs empower entrepreneurs—most often women—to initiate or scale up microenterprises. In most villages, these loans support poultry farming, handloom weaving, or tiny retailing outlets. MFIs go beyond credit by regularly offering financial education training, teaching borrowers to cope with cash flows and interest charges. Critics warn, however, that excessive interest rates and repayment pressure can result in over-indebtedness. To avoid such risks, some MFIs limit interest rates and spread repayment terms. Research indicates that when complemented by market linkages—such as guaranteed buyers for fruits and vegetables—microfinance can trigger sustainable economic growth and poverty reduction.</p> <p>The primary function of microfinance institutions, according to the passage, is to:</p>
	Charge high interest rates to rural borrowers
	Provide large corporate loans
	Offer financial services to those excluded from traditional banking systems
	Regulate national monetary policy

Q.No: 108	<p>Read the following passage and answer the questions based on the passage:</p> <p>Microfinance institutions (MFIs) have become crucial agents for advancing financial inclusion in rural areas. Through extending small loans and savings accounts to people who don't have access to conventional banks, MFIs empower entrepreneurs—most often women—to initiate or scale up microenterprises. In most villages, these loans support poultry farming, handloom weaving, or tiny retailing outlets. MFIs go beyond credit by regularly offering financial education training, teaching borrowers to cope with cash flows and interest charges. Critics warn, however, that excessive interest rates and repayment pressure can result in over-indebtedness. To avoid such risks, some MFIs limit interest rates and spread repayment terms. Research indicates that when complemented by market linkages—such as guaranteed buyers for fruits and vegetables—microfinance can trigger sustainable economic growth and poverty reduction.</p> <p>In the context of the above passage, “microenterprises” most nearly means:</p>
	Multinational corporations
	Small-scale businesses
	Government agencies
	Family-owned farms

Q.No: 109	<p>Read the following passage and answer the questions based on the passage:</p> <p>Microfinance institutions (MFIs) have become crucial agents for advancing financial inclusion in rural areas. Through extending small loans and savings accounts to people who don't have access to conventional banks, MFIs empower entrepreneurs—most often women—to initiate or scale up microenterprises. In most villages, these loans support poultry farming, handloom weaving, or tiny retailing outlets. MFIs go beyond credit by regularly offering financial education training, teaching borrowers to cope with cash flows and interest charges. Critics warn, however, that excessive interest rates and repayment pressure can result in over-indebtedness. To avoid such risks, some MFIs limit interest rates and spread repayment terms. Research indicates that when complemented by market linkages—such as guaranteed buyers for fruits and vegetables—microfinance can trigger sustainable economic growth and poverty reduction.</p> <p>Which benefit of MFIs is mentioned besides lending money?</p>
	Granting land titles
	Financial literacy training
	Tax exemptions
	Import-export facilitation

Q.No: 110	<p>Read the following passage and answer the questions based on the passage:</p> <p>Microfinance institutions (MFIs) have become crucial agents for advancing financial inclusion in rural areas. Through extending small loans and savings accounts to people who don't have access to conventional banks, MFIs empower entrepreneurs—most often women—to initiate or scale up microenterprises. In most villages, these loans support poultry farming, handloom weaving, or tiny retailing outlets. MFIs go beyond credit by regularly offering financial education training, teaching borrowers to cope with cash flows and interest charges. Critics warn, however, that excessive interest rates and repayment pressure can result in over-indebtedness. To avoid such risks, some MFIs limit interest rates and spread repayment terms. Research indicates that when complemented by market linkages—such as guaranteed buyers for fruits and vegetables—microfinance can trigger sustainable economic growth and poverty reduction.</p> <p>What is a key criticism of microfinance highlighted in the passage?</p>
	It fails to reach women borrowers.
	It offers only savings accounts.
	High interest and repayment pressure can cause debt.
	It mandates market linkages.

Q.No: 111	<p>Read the following passage and answer the questions based on the passage:</p> <p>Microfinance institutions (MFIs) have become crucial agents for advancing financial inclusion in rural areas. Through extending small loans and savings accounts to people who don't have access to conventional banks, MFIs empower entrepreneurs—most often women—to initiate or scale up microenterprises. In most villages, these loans support poultry farming, handloom weaving, or tiny retailing outlets. MFIs go beyond credit by regularly offering financial education training, teaching borrowers to cope with cash flows and interest charges. Critics warn, however, that excessive interest rates and repayment pressure can result in over-indebtedness. To avoid such risks, some MFIs limit interest rates and spread repayment terms. Research indicates that when complemented by market linkages—such as guaranteed buyers for fruits and vegetables—microfinance can trigger sustainable economic growth and poverty reduction.</p> <p>According to the author, sustainable impact occurs when microfinance is combined with:</p>
	High interest rates
	Market linkages
	Shorter loan tenures
	Government bailouts

Q.No: 112	<p>In the following passage, some words have been omitted. Read the passage carefully and choose the most appropriate option from the given alternatives to fill in each blank. Mark your answer for each question.</p> <p>For many young professionals, choosing a career is no longer just about earning a salary—it's about finding meaning in what they do. Some are drawn to high-paying jobs, while others feel more (1)_____ working in fields that align with their personal values. This growing divide between passion and paycheck has led to tough decisions for many. While financial stability is important, ignoring one's true interests can lead to long-term (2)_____. Experts suggest that a balanced approach is possible. One can pursue a stable job and still nurture their passions through part-time work, volunteering, or creative outlets. However, such a path requires careful (3)_____. Making impulsive career shifts without planning can lead to regret. It's important to evaluate not just income, but also growth, purpose, and job (4)_____. After all, the goal is not just to survive—but to build a life that is both secure and (5)_____.</p> <p>(1)</p>
	challenged
	comfortable
	proud
	fulfilled

Q.No: 113	<p>In the following passage, some words have been omitted. Read the passage carefully and choose the most appropriate option from the given alternatives to fill in each blank. Mark your answer for each question.</p> <p>For many young professionals, choosing a career is no longer just about earning a salary—it's about finding meaning in what they do. Some are drawn to high-paying jobs, while others feel more (1)_____ working in fields that align with their personal values. This growing divide between passion and paycheck has led to tough decisions for many. While financial stability is important, ignoring one's true interests can lead to long-term (2)_____. Experts suggest that a balanced approach is possible. One can pursue a stable job and still nurture their passions through part-time work, volunteering, or creative outlets. However, such a path requires careful (3)_____. Making impulsive career shifts without planning can lead to regret. It's important to evaluate not just income, but also growth, purpose, and job (4)_____. After all, the goal is not just to survive—but to build a life that is both secure and (5)_____.</p> <p>(2)</p>
success	
burnout	
freedom	
boredom	

Q.No: 114	<p>In the following passage, some words have been omitted. Read the passage carefully and choose the most appropriate option from the given alternatives to fill in each blank. Mark your answer for each question.</p> <p>For many young professionals, choosing a career is no longer just about earning a salary—it's about finding meaning in what they do. Some are drawn to high-paying jobs, while others feel more (1)_____ working in fields that align with their personal values. This growing divide between passion and paycheck has led to tough decisions for many. While financial stability is important, ignoring one's true interests can lead to long-term (2)_____. Experts suggest that a balanced approach is possible. One can pursue a stable job and still nurture their passions through part-time work, volunteering, or creative outlets. However, such a path requires careful (3)_____. Making impulsive career shifts without planning can lead to regret. It's important to evaluate not just income, but also growth, purpose, and job (4)_____. After all, the goal is not just to survive—but to build a life that is both secure and (5)_____.</p> <p>(3)</p>
luck	
hesitation	
planning	
risk	

Q.No: 115	<p>In the following passage, some words have been omitted. Read the passage carefully and choose the most appropriate option from the given alternatives to fill in each blank. Mark your answer for each question.</p> <p>For many young professionals, choosing a career is no longer just about earning a salary—it's about finding meaning in what they do. Some are drawn to high-paying jobs, while others feel more (1)_____ working in fields that align with their personal values. This growing divide between passion and paycheck has led to tough decisions for many. While financial stability is important, ignoring one's true interests can lead to long-term (2)_____. Experts suggest that a balanced approach is possible. One can pursue a stable job and still nurture their passions through part-time work, volunteering, or creative outlets. However, such a path requires careful (3)_____. Making impulsive career shifts without planning can lead to regret. It's important to evaluate not just income, but also growth, purpose, and job (4)_____. After all, the goal is not just to survive—but to build a life that is both secure and (5)_____.</p> <p>(4)</p>
comfort	
loyalty	
stability	
attitude	

Q.No: 116	<p>In the following passage, some words have been omitted. Read the passage carefully and choose the most appropriate option from the given alternatives to fill in each blank. Mark your answer for each question.</p> <p>For many young professionals, choosing a career is no longer just about earning a salary—it's about finding meaning in what they do. Some are drawn to high-paying jobs, while others feel more (1)_____ working in fields that align with their personal values. This growing divide between passion and paycheck has led to tough decisions for many. While financial stability is important, ignoring one's true interests can lead to long-term (2)_____. Experts suggest that a balanced approach is possible. One can pursue a stable job and still nurture their passions through part-time work, volunteering, or creative outlets. However, such a path requires careful (3)_____. Making impulsive career shifts without planning can lead to regret. It's important to evaluate not just income, but also growth, purpose, and job (4)_____. After all, the goal is not just to survive—but to build a life that is both secure and (5)_____.</p> <p>(5)</p>
	wealthy
	creative
	rewarding
	routine

Q.No: 117	<p>In the following question, the first and the last parts of the sentence/passage are numbered 1 and 6. The rest of the sentence/passage is split into four parts — P, Q, R, and S. These four parts are not given in their proper order. Read the sentence/passage and find the most logical order of the parts between 1 and 6.</p> <p>The Earth's climate has changed over centuries. P: But current warming is caused by human actions. Q: Historically, it changed due to natural causes. R: Burning fossil fuels increases greenhouse gases. S: Deforestation worsens the problem. 6. This calls for urgent action.</p>
	QPRS
	QPSR
	SQRP
	PRSQ

Q.No: 118	<p>Identify the part containing a grammatical or structural error:</p> <p>Neither Ramesh nor his friends is willing to join.</p>
	s willing to join
	No error
	nor his friends
	Neither Ramesh

Q.No: 119	<p>Select the correct passive form of the given sentence.</p> <p>"They serve food to the guests."</p>
	Food is served to the guests by them.
	Food was served to the guests.
	Food is being served by them.
	Food has served by them.

Q.No: 120	<p>Choose the antonym of 'meticulous':</p>
	Negligent
	Thorough
	Precise

Careful

Q.No: 121 Choose the correct direct speech form of the following sentence.

The interviewer asked me if I could drive a car.

The interviewer said, "Will you drive a car?"

The interviewer said, "Can you drive a car?"

The interviewer said, "You can drive a car."

The interviewer said, "Shall I drive a car?"

Q.No: 122 In the following question, the first and the last parts of the sentence/passage are numbered 1 and 6. The rest of the sentence/passage is split into four parts — P, Q, R, and S. These four parts are not given in their proper order. Read the sentence/passage and find the most logical order of the parts between 1 and 6.

Exercise keeps the body fit and active. P: It also boosts mental health. Q: Regular workouts reduce stress levels. R: Walking, cycling, and yoga are easy options. S: Physical activity strengthens the heart and muscles. 6. So, exercise should be part of our routine.

SPRQ

QRSP

SQPR

PRQS

Q.No: 123 Choose the antonym of 'imitate':

Replicate

Copy

Innovate

Echo

Q.No: 124 Select the synonym of **Deteriorate**.

Grow

Worsen

Revive

Improve

Q.No: 125 Select the synonym of **Abstruse**.

Difficult

Obvious

Simple

Clear

Q.No: 126 Find the misspelt word.

influential

Magnanimous

Magnanimous

intelligent

Q.No: 127 Find the incorrect part of the sentence:
He could not cope up with the pressure.

cope up with

the pressure

No error

He could not

Q.No: 128 Choose the option that completes the sentence using the correct spelling.

After 35 years of service, Mr. Das finally retired and began receiving his _____ benefits every month.

superanution

superanuotion

superannuation

superanualtion

Q.No: 129 Select the correct synonym for 'Abate'.

Moderate

Increase

Evil

Honest

Q.No: 130 Select the option that expresses the given sentence in Direct Speech.
She said that she could have passed the exam.

She said, "I would have passed the exam."

She said, "I could have passed the exam."

She said, "I might have passed the exam."

She said, "I should have passed the exam."

Q.No: 131 Select the most appropriate homonym.
He was **charged** with theft.

Energized

Filled

Ordered

Accused

Q.No: 132	Select the most appropriate option to fill in the blank. She adhered strictly ____ the code of conduct.
for	
by	
to	
at	

Q.No: 133	Select the most appropriate option to improve the bold part of the sentence. He is a honest man.
the honest	
an honest	
one honest	
honest	

Q.No: 134	What is the one word for "A person who is talkative"?
Introvert	
Garrulous	
Reticent	
Faciturn	

Q.No: 135	Select the correct passive form of the given sentence. "They can be delivering the goods tomorrow."
The goods can be being delivered tomorrow.	
The goods shall be delivering tomorrow.	
The goods can deliver tomorrow.	
The goods can be delivered tomorrow.	

Q.No: 136	Select the correct active form. "A decision will have been taken by the committee."
The committee will take a decision.	
The committee will have taken a decision.	
The committee took a decision.	
The committee has taken a decision.	

Q.No: 137	Select the most appropriate option to improve the bold part of the sentence. He came here with a view to meet his old friend.
to meet with	
for meeting	
in view to meet	
with a view to meeting	

Q.No: 138	Select the most appropriate option to improve the bold part of the sentence. The manager discussed on the issue in detail.
	discussed the issue
	discussed about the issue
	explained the issue
	talked over the issue

Q.No: 139	Rearrange the parts of this sentence: (A) their demands (B) the workers (C) went on strike (D) after the management rejected
	DBAC
	DACB
	BDAC
	BACD
	Not Answered

Q.No: 140	In the following question, the first and the last parts of the sentence/passage are numbered 1 and 6. The rest of the sentence/passage is split into four parts — P, Q, R, and S. These four parts are not given in their proper order. Read the sentence/passage and find the most logical order of the parts between 1 and 6. Riya enjoys learning different languages. P: She attends French classes. Q: Her Spanish is improving. R: She knows some German. S: She uses an app to practice daily. 6. She wants to be a polyglot.
	RQSP
	QRSP
	QPRS
	RPQS

Q.No: 141	Select the correct passive form of the given sentence. "The doctor prescribed the medicine."
	The medicine is prescribed.
	The medicine has been prescribed.
	The medicine had been prescribing.
	The medicine was prescribed by the doctor.

Q.No: 142	Choose the correct option to complete the sentence. The volunteers will _____ the neighbourhood to gather support for the new policy.
	canvas
	canopies
	canvass
	cannabis

Q.No: 143	Select the most appropriate option to fill in the blank. We prefer tea ____ coffee.
	or

for
on
with

Q.No: 144	Select the most appropriate option to fill in the blank. My house is ___ the bank and the post office.
among	
across	
beside	
between	

Q.No: 145	Choose the word that is not spelled correctly.
Exagerate	
Leisure	
Colleague	
Maintenance	

Q.No: 146	Select the most appropriate option to improve the bold part of the sentence. Each of the students have a book.
has	
had	
gets	
is having	

Q.No: 147	Choose the correct direct speech form of the following sentence. Robinson said that he would be planting trees along the bank of the river.
Robinson said, "I am planting trees along the bank of the river."	
Robinson said, "I shall plant trees along the bank of the river."	
Robinson said, "I shall be planting trees along the bank of the river."	
Robinson said, "I shall have to plant trees along the bank of the river."	

Q.No: 148	Arrange the sentence parts: (A) opened (B) suddenly (C) the door (D) he
DABC	
CBAD	
DCAB	
DACE	

Q.No: 149	Identify the error in the sentence. This route is most safer than the highway.
-----------	---

safer
highway
most
route

Q.No: 150	Find the incorrect part of the sentence: The police has arrested the culprit.
has arrested	
The police	
the culprit	
No error	

Q.No: 151	Choose the one which can be substituted for the given sentence. A medicine that induces sleep
Sedative	
Narcotic	
Analgesic	
Hypnotic	

Q.No: 152	What does the idiom 'In black and white' mean?
Officially in writing	
In verbal form	
In secret	
Unclear terms	

Q.No: 153	Change the voice of the following sentence. It is going to be constructed by them within a few weeks.
They are going to construct it with a few weeks.	
They are going to construct it within a few weeks.	
They are going to construct something within a few weeks.	
They are going to constructed it within a few weeks.	

Q.No: 154	Select the correct active form of the given sentence. "The hungry dog was gently fed by the owner."
The owner gently fed up the hungry dog.	
The owner fed the hungry dog.	
The owner gently fed the hungry dog.	
The owner gently feeding the hungry dog.	

Q.No: 155	Choose the correct active voice form of the sentence: "The editorial is written by Mamatha."
Mamatha has writing the editorial.	
Mamatha writes the editorial.	
Mamatha is writes the editorial.	
Mamatha writing the editorial.	

Q.No: 156	Select the correct active form. "The truth must be told by you."
You must have told the truth.	
You ought to tell the truth.	
You must be telling the truth.	
You must tell the truth.	

Q.No: 157	Select the most appropriate homonym. The company refused to back the project.
Finish	
Support	
Leave	
Pack	

Q.No: 158	Select the most appropriate option to fill in the blank. She is married ____ a businessman.
at	
with	
for	
to	

Q.No: 159	Select the most appropriate option to fill in the blank. I saw a man ____ was wearing a black coat.
which	
whom	
who	
whose	

Q.No: 160	Choose the part of the sentence that contains an error: She gave me a good advice.
good	
She gave me	
a good advice	
No error	

Q.No: 161	In the following question, the first and the last parts of the sentence/passage are numbered 1 and 6. The rest of the sentence/passage is split into four parts — P, Q, R, and S. These four parts are not given in their proper order. Read the sentence/passage and find the most logical order of the parts between 1 and 6. Artificial Intelligence is reshaping industries. P: It also improves customer service through automation. Q: In healthcare, it helps in quick diagnosis. R: AI systems reduce human error in complex calculations. S: From manufacturing to medicine, its impact is visible. 6. Its future role will only expand.
	SQRP
	RSQP
	QPRS
	QRPS

Q.No: 162	Rearrange the parts of this sentence: (A) despite poor rainfall (B) the farmers (C) managed to harvest (D) a good crop
	BDAC
	BADC
	ADCB
	CBAD

Q.No: 163	Select the option that expresses the given sentence in Direct to Indirect Speech. He said, "Let me do it myself."
	He asked to do it himself.
	He suggested doing it himself.
	He requested that he do it himself.
	He asked to be allowed to do it himself.

Q.No: 164	Choose the correct sequence to form a meaningful sentence: (A) the guests (B) arrived (C) at the party (D) early
	BACD
	ABDC
	BADC
	CBAD

Q.No: 165	Select the option that expresses the given sentence in Direct to Indirect Speech. Rita said, "I am happy today."
	Rita said that she is happy today.
	Rita said that she was happy that day.
	Rita said that she had been happy that day.
	Rita said that she was happy today.

Q.No: 166	Select the option that expresses the given sentence in Direct to Indirect Speech. He said, "I may go there."

He said that he would go there.

He said that he goes there.

He said that he might go there.

He said that he may go there.

Q.No: 167 Select the most appropriate homonym.
The diver reached the **sea bed**.

Mattress

Bottom

Rest

Chair

Q.No: 168 In the following question, the first and the last parts of the sentence/passage are numbered 1 and 6. The rest of the sentence/passage is split into four parts — P, Q, R, and S. These four parts are not given in their proper order. Read the sentence/passage and find the most logical order of the parts between 1 and 6.

The invention of the telescope changed astronomy. P: Scientists could observe distant galaxies. Q: They discovered stars not visible to the naked eye. R: Earlier, knowledge was limited to nearby celestial bodies. S: The new tool opened a whole new universe. 6. Astronomy became a precise science.

SRPQ

PQRS

RPSQ

RSQP

Q.No: 169 Choose the one which can be substituted for the given sentence.
One who studies the evolution of mankind

Archaeologist

Sociologist

Anthropologist

Philologist

Q.No: 170 In the following question, the first and the last parts of the sentence/passage are numbered 1 and 6. The rest of the sentence/passage is split into four parts — P, Q, R, and S. These four parts are not given in their proper order. Read the sentence/passage and find the most logical order of the parts between 1 and 6.

The invention of the wheel changed the world. P: Transport became easier. Q: Machines could now be built. R: Travel became faster. S: Roads improved quickly. 6. It was a great invention.

PRQS

PRSQ

PQRS

PSRQ

Q.No: 171 Select the most appropriate option to fill in the blank.
Please switch ___ the lights.

down

up
over
off

Q.No: 172	Choose the one which can be substituted for the given sentence. A place where wild animals are kept
Abattoir	
Aquarium	
Zoo	
Aviary	

Q.No: 173	Select the most appropriate option to fill in the blank. The witness was reluctant to part ____ vital information.
by	
of	
with	
from	

Q.No: 174	Transform the following sentence into active voice. The tree was felled by the farmer.
The farmer has felled the tree.	
The farmer fell from the tree.	
The farmer fell the tree.	
The farmer felled the tree.	

Q.No: 175	What does the idiom 'To have the last laugh' mean?
Succeed eventually	
Fail hopelessly	
Be mocked	
Stay indifferent	

Q.No: 176	Arrange the sentence parts: (A) invited (B) to the event (C) many guests (D) were
DABC	
DCAB	
CDAB	
DACB	

Q.No: 177	<p>In the following question, the first and the last parts of the sentence/passage are numbered 1 and 6. The rest of the sentence/passage is split into four parts — P, Q, R, and S. These four parts are not given in their proper order. Read the sentence/passage and find the most logical order of the parts between 1 and 6.</p> <p>Recycling helps in environmental protection. P: It reduces the amount of waste in landfills. Q: Recycling paper saves trees and water. R: It also cuts down pollution caused by burning waste. S: But awareness among people is still low. 6. Public campaigns can improve participation.</p>
-----------	---

QPRS

PQRS

QRSP

PRSQ

Q.No: 178	<p>Arrange the sentence parts: (A) after the meeting (B) the team members (C) went (D) to a restaurant</p>
-----------	--

ABCD

BADC

BCAD

BACD

Q.No: 179	<p>Select the correct passive form of the given sentence. "We may have misunderstood the instructions."</p>
-----------	---

The instructions may be misunderstood.

The instructions are being misunderstood.

The instructions may have misunderstood.

The instructions may have been misunderstood.

Q.No: 180	<p>Select the synonym of Loathe.</p>
-----------	---

Accept

Like

Hate

Love

Q.No: 181	<p>Select the misspelt word from the list.</p>
-----------	--

Mason

Manoeuvre

Reservoir

Camouflage

Q.No: 182	<p>What does the idiom 'Give someone a cold shoulder' mean?</p>
-----------	---

Treat warmly

Praise someone

Ignore someone

Invite for dinner

Q.No: 183 Arrange the sentence parts:
(A) were injured (B) many passengers (C) in the accident (D) yesterday

BCAD

BCDA

BACD

BADC

Q.No: 184 Select the option that expresses the given sentence in Direct to Indirect Speech.
She said, "How wonderful the view is!"

She said how wonderful the view is.

She exclaimed that the view was very wonderful.

She said that the view is wonderful.

She exclaimed that the view was wonderful.

Q.No: 185 Choose the antonym of 'enhance':

Increase

Enlarge

Diminish

Augment

Q.No: 186 Select the most appropriate option to improve the bold part of the sentence.
The higher you go, the **cooler it get.**

cooler it gets

cooler it getting

more cooler it gets

coolest it becomes

Q.No: 187 Choose the correct meaning of idiom:
'Show a clean pair of heels'

Run away

Imitate one

Be precise and careful

Spread quickly

Q.No: 188 What does the idiom 'To turn over a new leaf' mean?

Start afresh

Repeat mistakes

Turn pages

Stay unchanged

Q.No: 189 Select the option that expresses the given sentence in Direct Speech.
She told me that I should have been more careful.

She said, "You should have been more careful."

She said, "You should be more careful."

She said, "You would have been more careful."

She said, "You must have been more careful."

Q.No: 190 Select the option that expresses the given sentence in Direct to Indirect Speech.
She said, "My parents are visiting next week."

She said that her parents are visiting next week.

She said that her parents will visit next week.

She said that my parents were visiting the next week.

She said that her parents were visiting the following week.

Q.No: 191 Choose the correct meaning of the idiom:
'Tooth and nail'

Secretly and silently

Without any tools

In a confused state

With full strength and determination

Q.No: 192 Identify the misspelt word:

Acknowledge

Connoissuer

Acquire

Absence

Q.No: 193 Choose the part of the sentence that contains an error:
Neither the teacher nor the students was present.

No error

was present

Neither the teacher

nor the students

Q.No: 194 Choose the correct direct speech form of the following sentence.
The reporter reported that five people had been drowned in a boat accident.

The reporter said, "Five people were drowned in a boat accident."

The reporter said, "Five people are drowned in a boat accident."

The reporter said, "Five people were drowning in a boat accident."

The reporter said, "Five people drowned in a road accident."

Q.No: 195 Rearrange the parts of this sentence:
(A) to protect endangered species (B) wildlife sanctuaries (C) have been established (D) across the country

BADC

BACD

BCAD

CBAD

Q.No: 196 Choose the correctly spelt word:

Occasional

Occational

Occassional

Occasionale

Q.No: 197 Select the most appropriate option to improve the bold part of the sentence.
She prevented me **to go** there.

for going

against going

going to

from going

Q.No: 198 Select the most appropriate option to fill in the blank.
The officials connived ___ the illegal activities.

with

for

on

at

Q.No: 199 Choose the correct direct speech form of the following sentence.

They requested to close the door if he was feeling cold.

He said, "Please closed the door if you are feeling cold."

He said, "Please close the door if you are feeling cold."

He said, "Please close the door if you is feeling cold."

He said, "Please close the door if feel cold."

Q.No: 200 Select the most appropriate option to improve the bold part of the sentence.
Scarcely had I left when it **was starting** to rain.

had started

was begun

did start

started

KD Job Updates



SSC ONLINE EXAMINATION

CANDIDATE RESPONSE SHEET/GRIEVANCE SYSTEM

[View Your Responses](#)[Click Here Grievance About Question](#)[Click Here View Grievance Questions](#)Admin loggedin.[[Logout](#)]

Exam Name : Steno Grade C and D ▼
Test Date : 07 Aug 2025
Test Time : 09:00 AM
Centre : DLNEW219_R K DIGITAL COMPUTER- CENTRE 1_100127

Correct Option selected Wrong Option selected Correct Option Not Answered

PART - A (General Intelligence & Reasoning)

Q.No: 1 In each of the following questions, a specific relationship is given between two words. Identify the word that shares a similar semantic relationship with the given pair. Choose the most appropriate option from the four choices given below.

Echo : Sound :: Reflection : ?

निम्नलिखित प्रत्येक प्रश्न में दो शब्दों के बीच एक विशिष्ट संबंध दिया गया है। उस शब्द की पहचान कीजिए जो दिए गए युग्म के साथ समान अर्थ संबंध साझा करता है। नीचे दिए गए चार विकल्पों में से सबसे उपयुक्त विकल्प चुनिए।

प्रतिध्वनि : ध्वनि :: परावर्तन : ?

Mirror

आईना

Refraction

अपवर्तन

Light

रोशनी

Image

छवि

Q.No: 2 Read the following statement carefully and identify the conclusion that follows.

Statements: All roses are flowers. Some flowers are red.

Conclusions:

I. Some roses are red.

II. All red things are flowers.

निम्नलिखित कथन को ध्यान से पढ़ें और निष्कर्ष निकालें।

कथन: सभी गुलाब फूल हैं। कुछ फूल लाल हैं।

निष्कर्ष:

I. कुछ गुलाब लाल हैं।

II. सभी लाल चीजें फूल हैं।

Only Conclusion I follows

केवल निष्कर्ष I अनुसरण करता है

Only Conclusion II follows

केवल निष्कर्ष II अनुसरण करता है

Both I and II follow

I और II दोनों अनुसरण करते हैं

Neither I nor II follows

न तो I और न ही II अनुसरण करता है

Q.No: 3 Seven friends are sitting in a circle facing the center. R is sitting to the immediate left of M. K is second to the right of M. T is sitting between R and K. P is not sitting next to K or M. Who is sitting opposite to P?

सात मित्र केंद्र की ओर मुंह करके एक वृत्त में बैठे हैं। R, M के ठीक बाएं बैठा है। K, M के दाएं से दूसरे स्थान पर है। T, R और K के बीच में बैठा है। P, K या M के बगल में नहीं बैठा है। P के विपरीत कौन बैठा है?

R
R
K
K
M
M
T
T

Q.No: 4	<p>Input: 93 box 27 pink 46 green 18</p> <p>Step 1: box 93 27 pink 46 green 18 Step 2: box 93 green 27 pink 46 18 Step 3: box 93 green 46 27 pink 18 Step 4: box 93 green 46 pink 27 18</p> <p>What will be Step 5?</p> <p>इनपुट: 93 box 27 pink 46 green 18</p> <p>चरण 1: box 93 27 pink 46 green 18 चरण 2: box 93 green 27 pink 46 18 चरण 3: box 93 green 46 27 pink 18 चरण 4: box 93 green 46 pink 27 18</p> <p>चरण 5 क्या होगा?</p>
Box green 93 46 pink 27 18	
Box green 93 46 pink 27 18	
Box 93 green 46 pink 18 27	
Box 93 green 46 pink 18 27	
Box 93 green 46 pink 27 18	
Box 93 green 46 pink 27 18	
Green 46 pink 27 18 box 93	
Green 46 pink 27 18 box 93	

Q.No: 5	<p>Input: 8 cake 12 bag 5 apple Step 1: 5 apple 8 cake 12 bag Step 2: 5 apple 8 bag 12 cake</p> <p>What is the logic applied?</p> <p>इनपुट: 8 cake 12 bag 5 apple चरण 1: 5 apple 8 cake 12 bag चरण 2: 5 apple 8 bag 12 cake</p> <p>तर्क क्या लागू किया गया है?</p>
Numbers in ascending order; words in reverse alphabetical order	
संख्याएँ बढ़ते क्रम में; शब्द उल्टे वर्णमाला क्रम में	
Numbers and words are paired and sorted	
संख्याओं और शब्दों को जोड़ा और क्रमबद्ध किया गया है	
Numbers in descending order; words in reverse order	
संख्याएँ अवरोही क्रम में; शब्द उल्टे क्रम में	
Numbers in ascending order; words in alphabetical order	
संख्याएँ बढ़ते क्रम में; शब्द वर्णमाला क्रम में	

Q.No: 6	<p>In each of the following questions, two numbers are given which follow a certain logical or arithmetic relationship. Identify the same pattern and apply it to find the missing number in the second pair. Choose the correct option from the given alternatives.</p> <p>58214 : 70436 :: 73928 : ?</p> <p>निम्नलिखित प्रत्येक प्रश्न में दो संख्याएँ दी गई हैं जो एक निश्चित तार्किक या अंकगणितीय संबंध का पालन करती हैं। उसी पैटर्न को पहचानिए और दूसरे जोड़े में लुप्त संख्या ज्ञात करने के लिए उसका प्रयोग कीजिए। दिए गए विकल्पों में से सही विकल्प चुनिए।</p> <p>58214 : 70436 :: 73928 : ?</p>
---------	---

86140

86140

85130

85130

95140

95140

95130

95130

Not Answered

Q.No: 7 In the following questions, which one set of letters/numbers when sequentially placed at the gaps in the given letter series shall complete it? **d_e_f_12g_16h_20i_24**

निम्नलिखित प्रश्नों में, अक्षरों/संख्याओं का कौन सा समूह दिए गए अक्षर श्रृंखला में रिक्त स्थानों पर क्रमिक रूप से रखने पर उसे पूरा करेगा?
d_e_f_12g_16h_20i_24

ef8ghij

ef8ghij

gh8ijij

gh8ijij

fg8hijj

fg8hijj

de8fgij

de8fgij

Q.No: 8 If + means -, ÷ means +, - means ×, and × means ÷ then, what is $28 - 4 \div 8 + 16$?

यदि + का अर्थ - है, ÷ का अर्थ + है, - का अर्थ × है, और × का अर्थ ÷ है, तो $28 - 4 \div 8 + 16$ क्या है?

104

104

112

112

108

108

100

100

Q.No: 9 Read the following statement carefully and identify the conclusion that follows.

Statements: All chairs are furniture. Some furniture are tables.

Conclusions:

I. Some tables are chairs.

II. All chairs are tables.

निम्नलिखित कथन को ध्यान से पढ़ें और निष्कर्ष निकालें।

कथन: सभी कुर्सियाँ फर्नीचर हैं। कुछ फर्नीचर टेबल हैं।

निष्कर्ष:

I. कुछ टेबल कुर्सियाँ हैं।

II. सभी कुर्सियाँ टेबल हैं।

Neither I nor II follows

न तो I और न ही II अनुसरण करता है

Both I and II follow

I और II दोनों अनुसरण करते हैं

Only I follows

केवल I अनुसरण करता है

Only II follows

केवल II अनुसरण करता है

Q.No: 10	In a class of 30 students, Priya is ranked 12th from the top. What is her rank from the bottom? 30 छात्रों की एक कक्षा में, प्रिया ऊपर से 12वें स्थान पर है। नीचे से उसका स्थान क्या है?
17th	
17वीं	
19th	
19 वीं	
18th	
18वीं	
16th	
16वीं	

Q.No: 11	Kiran walks 7 km south, then turns to her right and walks 4 km. She again turns to her right and walks 7 km. How far is she from her starting point? किरण 7 किमी दक्षिण दिशा में चलती है, फिर अपने दाएं मुड़कर 4 किमी चलती है। वह फिर से अपने दाएं मुड़कर 7 किमी चलती है। वह अपने शुरुआती बिंदु से कितनी दूर है?
0 km	
0 किमी	
11 km	
11 किमी	
7 km	
7 किमी	
4 km	
4 किमी	

Q.No: 12	X is to U as N is to: X, U के लिए वैसा ही है जैसा N:
X	
X	
J	
J	
L	
L	
M	
M	

Q.No: 13	Rohan walks 10 meters towards the North. Then he turns right and walks 5 meters. Again, he turns right and walks 10 meters. In which direction is he now from his starting point? रोहन उत्तर दिशा की ओर 10 मीटर चलता है। फिर वह दाएं मुड़ता है और 5 मीटर चलता है। फिर से, वह दाएं मुड़ता है और 10 मीटर चलता है। अब वह अपने शुरुआती बिंदु से किस दिशा में है?
North	
उत्तर	
South	
दक्षिण	
East	
पूर्व	
West	
पश्चिम	

Q.No: 14	Complete the series: 6, 11, 21, 36, 56, ? श्रृंखला को पूरा करें: 6, 11, 21, 36, 56, ?
80	
80	

76

76

75

75

81

81

Q.No: 15 If 6 workers complete a job in 15 days. How many days will 9 workers take assuming the same work rate?

यदि 6 श्रमिक किसी कार्य को 15 दिनों में पूरा करते हैं, तो समान कार्य दर मानते हुए 9 श्रमिक कितने दिन में पूरा करेंगे?

10 days

10 दिन

11 days

11 दिन

9 days

9 दिन

12 days

12 दिन

Q.No: 16 A train 150 m long passes a pole in 10 seconds. What is its speed in km/h?

150 मीटर लंबी एक रेलगाड़ी एक खंभे को 10 सेकंड में पार करती है। इसकी गति किमी/घंटा में क्या है?

60 km/h

60 किमी/घंटा

54 km/h

54 किमी/घंटा

48 km/h

48 किमी/घंटा

45 km/h

45 किमी/घंटा

Q.No: 17 A word-and-number arrangement machine rearranges a given input following a specific rule in each step. The rule involves moving the alphabetically smallest word to the leftmost side and the numerically largest number to the rightmost side in each step. The process continues until all words are arranged in alphabetical order at the left end, and all numbers in descending order at the right end.

Based on the pattern, answer the questions that follow the given input.

Input: **Apple 41 Orange 62 85 Mango Banana 19**

Question: What is the final (last) arrangement?

एक शब्द-और-संख्या व्यवस्था मशीन प्रत्येक चरण में एक विशिष्ट नियम का पालन करते हुए दिए गए इनपुट को पुनर्व्यवस्थित करती है। इस नियम में प्रत्येक चरण में वर्णमाला के अनुसार सबसे छोटे शब्द को सबसे बाईं ओर और संख्यात्मक रूप से सबसे बड़ी संख्या को सबसे दाईं ओर ले जाना शामिल है। यह प्रक्रिया तब तक जारी रहती है जब तक कि सभी शब्द बाईं ओर वर्णमाला क्रम में और सभी संख्याएँ दाईं ओर अवरोही क्रम में व्यवस्थित न हो जाएँ।

इस पैटर्न के आधार पर, दिए गए इनपुट के बाद आने वाले प्रश्नों के उत्तर दीजिए।

इनपुट: **सेब 41 संतरा 62 85 आम केला 19**

प्रश्न: अंतिम (अंतिम) व्यवस्था क्या है?

Apple Banana Mango Orange 85 62 41 19

सेब केला आम संतरा 85 62 41 19

Banana Apple Mango Orange 85 62 41 19

केला सेब आम संतरा 85 62 41 19

Banana Mango Apple Orange 85 62 41 19

केला आम सेब संतरा 85 62 41 19

Apple Banana Orange Mango 85 62 41 19

सेब केला संतरा आम 85 62 41 19

Q.No: 18 All birds fly. Penguins are birds. Therefore, penguins fly." The flaw is:

सभी पक्षी उड़ते हैं। पेंगुइन पक्षी हैं। इसलिए, पेंगुइन उड़ते हैं।" दोष यह है:

Hasty generalization

जल्दबाजी में सामान्यीकरण

Irrelevant conclusion

अप्रासंगिक निष्कर्ष

Circular reasoning

वृत्ताकार तर्क

False premise

झूठा आधार

Q.No: 19 Which of these actions shows poor judgment in handling a disagreement with a friend?

इनमें से कौन सी कार्रवाई मित्र के साथ मतभेद से निपटने में खराब निर्णय को दर्शाती है?

Talking calmly to resolve it

शांति से बात करके इसे सुलझाना

Ignoring the friend permanently

मित्र को हमेशा के लिए नज़रअंदाज़ करना

Taking time to cool off

ठंडा होने में समय लगाना

Writing a letter to express your feelings

अपनी भावनाओं को व्यक्त करने के लिए पत्र लिखना

Q.No: 20 If 4 workers can complete a job in 12 days, how many days will 6 workers take to complete the same job?

अगर 4 श्रमिक किसी कार्य को 12 दिन में पूरा कर सकते हैं, तो 6 श्रमिक उसी कार्य को पूरा करने में कितने दिन लेंगे?

8 days

8 दिन

7 days

7 दिन

6 days

6 दिन

9 days

9 दिन

Q.No: 21 Which one is different from the others?

इनमें से कौन सा अन्य से भिन्न है?

121

121

189

189

169

169

144

144

Q.No: 22 In each of these questions, a number series is given. In each series, only one number is wrong number. Find out the wrong number.

5, 11, 21, 43, 86, 171

प्रत्येक प्रश्न में एक संख्या श्रृंखला दी गई है। प्रत्येक श्रृंखला में केवल एक संख्या गलत है। गलत संख्या ज्ञात कीजिए। **5, 11, 21, 43, 86, 171**

172

172

86

86

5

5

43

Q.No: 23 A and B are sisters. C is the brother of A. D is the father of C. How is D related to B?

A और B बहनें हैं। C, A का भाई है। D, C का पिता है। D का B से क्या संबंध है?

Father

पिता

Uncle

चाचा

Brother

भाई

Father-in-law

ससुर

Q.No: 24 In a class of 41 students, Ramesh is ranked 21st from the top. What is his rank from the bottom?

41 छात्रों की एक कक्षा में रमेश की रैंक ऊपर से 21st है। नीचे से उसकी रैंक क्या है?

22

22

21

21

30

30

20

20

Q.No: 25 Four of the following five are alike in a certain way and hence form a group. Which is the one that does not belong to that group?

1. SMILE : T N K L I

2. BRING : C S H M H

3. FLOUR : G M N V Q

4. HOUSE : I P V T F

5. TRUTH : U S V U I

निम्नलिखित पाँच में से चार एक निश्चित रूप से एक जैसे हैं और इसलिए एक समूह बनाते हैं। वह कौन सा है जो उस समूह से संबंधित नहीं है?

1. SMILE : T N K L I

2. BRING : C S H M H

3. FLOUR : G M N V Q

4. HOUSE : I P V T F

5. TRUTH : U S V U I

TRUTH : U S V U I

TRUTH : U S V U I

HOUSE : I P V T F

HOUSE : I P V T F

FLOUR : G M N V Q

FLOUR : G M N V Q

SMILE : T N K L I

SMILE : T N K L I

Q.No: 26 If 4 workers can complete a task in 8 days. How many days will 8 workers take to complete the same task?

यदि 4 श्रमिक किसी कार्य को 8 दिनों में पूरा कर सकते हैं, तो 8 श्रमिक उसी कार्य को कितने दिनों में पूरा करेंगे?

10 days

10 दिन

4 days

4 दिन

6 days

6 दिन

8 days

8 दिन

Q.No: 27	<p>In each of the following questions, a word is transformed into another word by applying a specific alphabetical pattern to each of its letters. Identify the logic used in the first pair and apply the same logic to the second word to determine the correct answer.</p> <p>LIGHT : MJGHW :: HEAVY : ?</p> <p>निम्नलिखित प्रत्येक प्रश्न में, एक शब्द को उसके प्रत्येक अक्षर पर एक विशिष्ट वर्णमाला पैटर्न लागू करके दूसरे शब्द में बदला गया है। पहले जोड़े में प्रयुक्त तर्क को पहचानिए और सही उत्तर निर्धारित करने के लिए उसी तर्क को दूसरे शब्द पर लागू कीजिए।</p> <p>LIGHT : MJGHW :: HEAVY : ?</p>
	HAVH
	HAVH
	HISAT
	HISAT
	JENZQ
	JENZQ
	GPIDB
	GPIDB

Q.No: 28	<p>Complete the series: 2, 6, 14, 30, 62, ?</p> <p>श्रृंखला को पूरा करें: 2, 6, 14, 30, 62, ?</p>
	120
	120
	122
	122
	124
	124
	126
	126

Q.No: 29	<p>Fill in the blank: 4, 12, 6, 18, 9, ____</p> <p>रिक्त स्थान भरें: 4, 12, 6, 18, 9, ____</p>
	18
	18
	27
	27
	36
	36
	12
	12

Q.No: 30	<p>No humans are immortal. Some humans are scientists. Which of the following conclusions can be made?</p> <p>कोई भी मनुष्य अमर नहीं है। कुछ मनुष्य वैज्ञानिक हैं। निम्नलिखित में से कौन सा निष्कर्ष निकाला जा सकता है?</p>
	All humans are immortal
	सभी मनुष्य अमर हैं
	All scientists are mortal
	सभी वैज्ञानिक नश्वर हैं
	Some scientists are not immortal
	कुछ वैज्ञानिक अमर नहीं हैं
	Some scientists are not humans
	कुछ वैज्ञानिक मनुष्य नहीं हैं

Q.No: 31	<p>Six people A, B, C, D, E, and F are sitting in a row. B is to the right of A but to the left of C. Who is in the middle?</p> <p>छह व्यक्ति A, B, C, D, E और F एक पंक्ति में बैठे हैं। B, A के दाईं ओर है लेकिन C के बाईं ओर है। बीच में कौन है?</p>
	D
	D
	C

C
D
D
A
A

Q.No: 32 **Statement:** Ethical behavior fosters trust, but profitability often relies on operational efficiency as well.

Conclusion I: Ethical behavior is not sufficient for profitability.

Conclusion II: Operational efficiency is required for trust.

Which conclusion follows?

कथन: नैतिक व्यवहार विश्वास को बढ़ावा देता है, लेकिन लाभप्रदता अक्सर परिचालन दक्षता पर भी निर्भर करती है।

निष्कर्ष I: लाभप्रदता के लिए नैतिक व्यवहार पर्याप्त नहीं है।

निष्कर्ष II: विश्वास के लिए परिचालन दक्षता आवश्यक है।

कौन सा निष्कर्ष अनुसरण करता है?

Both conclusion I and II follow

निष्कर्ष I और II दोनों अनुसरण करते हैं।

Neither conclusion I nor II follows

न तो निष्कर्ष I और न ही II अनुसरण करता है।

Only conclusion I follows

केवल निष्कर्ष I अनुसरण करता है।

Only conclusion II follows

केवल निष्कर्ष II अनुसरण करता है।

Q.No: 33 **Scenario:**

Priyanka has the following qualifications:

Education: B.Sc. with 82% and M.Sc. in Chemistry

Experience: 3 years in the relevant field

Age: 26 years

Eligibility Criteria for the Position:

Minimum Age: 25 years

Maximum Age: 30 years

Educational Qualification: At least M.Sc. in Chemistry

Experience: Minimum 2 years in the relevant field

Probationary Roles: Open to candidates with less than 5 years of experience

Decision:

Based on the provided information, what is the most appropriate decision regarding Priyanka's eligibility for the position?

परिदृश्य:

प्रियंका के पास निम्नलिखित योग्यताएँ हैं:

शिक्षा: 82% अंकों के साथ बी.एस.सी. और रसायन विज्ञान में एम.एस.सी.

अनुभव: संबंधित क्षेत्र में 3 वर्ष

आयु: 26 वर्ष

पद के लिए पात्रता मानदंड:

न्यूनतम आयु: 25 वर्ष

अधिकतम आयु: 30 वर्ष

शैक्षणिक योग्यता: रसायन विज्ञान में कम से कम एम.एस.सी.

अनुभव: संबंधित क्षेत्र में न्यूनतम 2 वर्ष

परिवीक्षाधीन भूमिकाएँ: 5 वर्ष से कम अनुभव वाले उम्मीदवारों के लिए खुली हैं

निर्णय:

प्रदान की गई जानकारी के आधार पर, पद के लिए प्रियंका की पात्रता के बारे में सबसे उपयुक्त निर्णय क्या है?

Priyanka is not eligible due to her age exceeding the maximum limit.

Testbook

प्रियंका अपनी आयु सीमा से अधिक होने के कारण पात्र नहीं हैं।

पाठ्यपुस्तक

Priyanka is eligible for the position as she meets all the criteria.

प्रियंका इस पद के लिए योग्य हैं क्योंकि वह सभी मानदंडों को पूरा करती हैं।

Priyanka is eligible only if she agrees to a probationary role.

प्रियंका तभी पात्र होंगी जब वह परिवीक्षाधीन भूमिका के लिए सहमत होंगी।

Priyanka is not eligible due to insufficient experience.

प्रियंका अपर्याप्त अनुभव के कारण पात्र नहीं है।

Q.No: 34 Eight people – A, B, C, D, E, F, G, and H – are sitting around a circular table, all facing outward.
D is third to the right of A.
B is sitting opposite D.
G is an immediate neighbor of both D and F.
C sits to the immediate right of F. (Modified from ""second to the left"")
E is third to the right of B.
Who is sitting to the immediate right of E?

आठ व्यक्ति - A, B, C, D, E, F, G, और H - एक गोलाकार मेज़ के चारों ओर बाहर की ओर मुख करके बैठे हैं।

D, A के दाईं ओर तीसरा है।

B, D के विपरीत बैठा है।

G, D और F दोनों का निकटतम पड़ोसी है।

C, F के ठीक दाईं ओर बैठा है। ('बाएँ से दूसरे' से संशोधित)

E, B के दाईं ओर तीसरा है।

E के ठीक दाईं ओर कौन बैठा है?

D

D

B

B

C

C

A

A

Q.No: 35 If READ = 79 and DEAR = 79, Then what is the code for DARE?

यदि READ = 79 और DEAR = 79 है, तो DARE का कोड क्या है?

87

87

86

86

88

88

79

79

Q.No: 36 In how many ways can 6 people be seated around a round table?

एक गोल मेज़ के चारों ओर 6 लोग कितने तरीकों से बैठ सकते हैं?

120

120

240

240

360

360

480

480

Q.No: 37 A train travels 180 km at a uniform speed. If the speed had been 15 km/h more, it would have taken 1 hour less to cover the same distance.

What is the original speed of the train?

एक रेलगाड़ी एकसमान गति से 180 किमी की यात्रा करती है। अगर गति 15 किमी/घंटा ज्यादा होती, तो उसे समान दूरी तय करने में 1 घंटा कम लगता।

रेलगाड़ी की मूल गति क्या है?

60 km/h

60 किमी/घंटा

45 km/h

45 किमी/घंटा

75 km/h

75 किमी/घंटा

30 km/h

30 किमी/घंटा

Q.No: 38 Find the number that doesn't belong:

वह संख्या ज्ञात करें जो इस सूची में नहीं है:

103

103

111

111

109

109

107

107

Q.No: 39 In a queue, Ram is 10th from the front and 15th from the back. How many people are in the queue?

एक कतार में, राम आगे से 10th और पीछे से 15th है। कतार में कितने लोग हैं?

26

26

27

27

24

24

25

25

Q.No: 40 Sameer has 67% in B.Sc. and a completed M.Sc. He is 31 years old and has 5 years of experience. Ready for probation.

समीर के पास बीएससी में 67% अंक हैं और उसने एमएससी की पढ़ाई पूरी कर ली है। वह 31 साल का है और उसके पास 5 साल का अनुभव है। प्रोबेशन के लिए तैयार है।

Selected

चयनित

Insufficient Data

अपर्याप्त डेटा

Refer to Principal

प्रिंसिपल से संपर्क करें

Refer to Vice Principal

उप प्राचार्य से संपर्क करें

Q.No: 41 Find the different term:

भिन्न पद ज्ञात करें:

49

49

64

64

90

90

81

81

Q.No: 42	<p>A man walks 4 km north, then turns right and walks 3 km. Then turns right again and walks 4 km.</p> <p>What is the shortest distance from his starting point?</p> <p>एक आदमी 4 किमी उत्तर की ओर चलता है, फिर दाएं मुड़ता है और 3 किमी चलता है। फिर दाएं मुड़ता है और 4 किमी चलता है।</p> <p>उसके शुरुआती बिंदु से सबसे छोटी दूरी क्या है?</p>
	2 km
	2 किमी
	5 km
	5 किमी
	3 km
	3 किमी
	4 km
	4 किमी

Q.No: 43	<p>What should come in the place of question mark (?) in the following alpha numeric series? 10M-30, 15O-27, 20K-24, 25Q-21, ?</p> <p>निम्नलिखित अल्फान्यूमेरिक श्रृंखला में प्रश्नवाचक चिह्न (?) के स्थान पर क्या आना चाहिए? 10M-30, 15O-27, 20K-24, 25Q-21, ?</p>
	32K-22
	32K-22
	31S-18
	31S-18
	33J-18
	33J-18
	30I-18
	30I-18

Q.No: 44	<p>What should come in the place of question mark (?) in the following alpha numeric series? 2A-50, 5Z-46, 8B-42, 11Y-38, ?</p> <p>निम्नलिखित अल्फान्यूमेरिक श्रृंखला में प्रश्नवाचक चिह्न (?) के स्थान पर क्या आना चाहिए? 2A-50, 5Z-46, 8B-42, 11Y-38, ?</p>
	14C-34
	14C-34
	14X-34
	14X-34
	14F-30
	14F-30
	14D-34
	14D-34

Q.No: 45	<p>Four of the following five are alike in a certain way and hence form a group. Which is the one that does not belong to that group?</p> <p>1. MNOP : NMOP 2. ABCD : BACD 3. FGHI : GFHI 4. STUV : TSUV 5. WXYZ : XYWZ</p> <p>निम्नलिखित पाँच में से चार एक निश्चित रूप से एक जैसे हैं और इसलिए एक समूह बनाते हैं। वह कौन सा है जो उस समूह से संबंधित नहीं है?</p> <p>1. MNOP : NMOP 2. ABCD : BACD 3. FGHI : GFHI 4. STUV : TSUV 5. WXYZ : XYWZ</p>
	MNOP : NMOP
	MNOP : NMOP
	ABCD : BACD
	ABCD : BACD
	WXYZ : XYWZ
	WXYZ : XYWZ
	STUV : TSUV
	STUV : TSUV

Q.No: 46	A is the father of B, and B is the mother of C. How is A related to C? A, B का पिता है और B, C की माता है। A का C से क्या संबंध है?
Grandfather	
दादा	
Father	
पिता	
Uncle	
चाचा	
Brother	
भाई	

Q.No: 47	Observe the following incomplete letter sequence carefully. A specific pattern governs the order and repetition of the letters. Choose the option that best fills the blanks to complete the sequence logically and symmetrically. aa_bbc_aa bb_aaac_cc निम्नलिखित अधूरी अक्षर श्रृंखला को ध्यान से देखें। अक्षरों के क्रम और पुनरावृत्ति को एक विशिष्ट पैटर्न नियंत्रित करता है। उस विकल्प को चुनें जो रिक्त स्थानों को तार्किक और सममित रूप से पूरा करने के लिए सबसे उपयुक्त है। ab_bbc_aa bb_aaac_cc
bbbb	
bbbb	
aaab	
aaab	
cccc	
cccc	
aaaa	
aaaa	
Not Answered	

Q.No: 48	Read the following statement carefully and identify the conclusion that follows. Statement: "Online learning has increased student participation." Conclusions: I. Students did not participate in physical classes. II. Technology helps in engaging students. निम्नलिखित कथन को ध्यान से पढ़ें और निष्कर्ष निकालें। कथन: "ऑनलाइन सीखने से छात्रों की भागीदारी बढ़ी है।" निष्कर्ष: I. छात्रों ने भौतिक कक्षाओं में भाग नहीं लिया। II. प्रौद्योगिकी छात्रों को जोड़ने में मदद करती है।
Only Conclusion II follows	
केवल निष्कर्ष II अनुसरण करता है	
Both I and II follow	
I और II दोनों अनुसरण करते हैं	
Neither I nor II follows	
न तो I और न ही II अनुसरण करता है	
Only Conclusion I follows	
केवल निष्कर्ष I अनुसरण करता है	

Q.No: 49	In the following question, a pair of words is given in capital letters, followed by five answer options consisting of word pairs. Choose the option in which the relationship between the two words most closely matches the relationship between the given pair. MAVERICK : CONFORMITY 1. Iconoclast : Tradition 2. Dilettante : Expertise 3. Ascetic : Indulgence 4. Demagogue : Populace 5. Altruist : Selfishness
----------	--

निम्नलिखित प्रश्न में, बड़े अक्षरों में शब्दों का एक युग्म दिया गया है, जिसके बाद शब्द युग्मों वाले पाँच उत्तर विकल्प दिए गए हैं। उस विकल्प का चयन कीजिए जिसमें दो शब्दों के बीच का संबंध दिए गए युग्म के बीच के संबंध से सबसे अधिक मेल खाता हो। आवारा : अनुरूपता

1. मूर्तिभंजक : परंपरा
2. शौकिया : विशेषज्ञता
3. तपस्वी : भोग-विलास
4. जननायक : जनता
5. परोपकारी : स्वार्थ

Altruist : Selfishness

परोपकारी : स्वार्थ

Ascetic : Indulgence

तपस्वी : भोग-विलास

Demagogue : Populace

जननायक : जनता

Iconoclast : Tradition

मूर्तिभंजक : परंपरा

Q.No: 50 In each of the following question, a pair of words (letter sequences) is given on the left-hand side of the double colon (::), which follows a certain alphabetical pattern. Identify the logic in the first pair and apply the same logic to the third word to find the correct corresponding word from the options.

RED : RFE :: TOP : ?

निम्नलिखित प्रत्येक प्रश्न में, दोहरे कोलन (::) के बाईं ओर शब्दों का एक युग्म (अक्षर क्रम) दिया गया है, जो एक निश्चित वर्णमाला क्रम का अनुसरण करता है। पहले युग्म में तर्क पहचानिए और विकल्पों में से सही संगत शब्द ज्ञात करने के लिए उसी तर्क को तीसरे शब्द पर लागू कीजिए।

RED : RFE :: TOP : ?

GAG

GAG

IPO

IPO

KAK

KAK

MOM

MOM

PART - B (General Awareness)

Q.No: 51 What was the **first published poetry collection** by Vinod Kumar Shukla?

विनोद कुमार शुक्ल का पहला प्रकाशित कविता संग्रह कौन सा था?

Lagbhag Jai Hind

लगभग जय हिंद

Kavita se Lambi Kavita

कविता से लम्बी कविता

Aakash Dharti Ko Khatakti Hai

आकाश धरती को खतरे में डालता है

Woh Aadmi Chala Gaya

वो आदमी चला गया

Not Answered

Q.No: 52 According to the Law of Periods, the square of a planet's time period is proportional to:

आवर्त के नियम के अनुसार, किसी ग्रह की आवर्त का वर्ग निम्नलिखित के समानुपाती होता है:

The square of its distance from the sun

सूर्य से इसकी दूरी का वर्ग

The cube of the semi-major axis of its orbit

अपनी कक्षा के अर्ध-दीर्घ अक्ष का घन

The square root of its orbital radius

इसकी कक्षीय त्रिज्या का वर्गमूल

The product of its mass and orbital speed

Q.No: 53 Which of Rutherford's experimental observations led him to conclude that the positive charge of an atom is concentrated in a very small region?

रदरफोर्ड के किस प्रयोगात्मक अवलोकन ने उन्हें यह निष्कर्ष निकालने के लिए प्रेरित किया कि परमाणु का धनात्मक आवेश बहुत छोटे क्षेत्र में केंद्रित होता है?

Electrons were found to orbit the nucleus in specific energy levels.

इलेक्ट्रॉन विशिष्ट ऊर्जा स्तरों पर नाभिक की परिक्रमा करते पाए गए।

A very small fraction of α -particles rebounded almost backwards.

α -कणों का एक बहुत छोटा अंश लगभग पीछे की ओर उछला।

Most α -particles followed a straight path through the gold foil.

अधिकांश α -कण सोने की पन्नी के माध्यम से एक सीधा रास्ता अपनाते हैं।

A small fraction of α -particles were deflected by small angles.

α -कणों का एक छोटा सा अंश छोटे कोणों से विक्षेपित हो गया।

Q.No: 54 The Western Coastal Plains are narrower compared to the Eastern Coastal Plains because:

पश्चिमी तटीय मैदान पूर्वी तटीय मैदानों की तुलना में संकरे क्यों हैं?

They receive less rainfall

इन क्षेत्रों में वर्षा कम होती है

They are less populated

यहाँ जनसंख्या घनता कम है

They are older in formation

ये भूगर्भीय रूप से प्राचीन हैं

They are bordered by the Western Ghats

ये पश्चिमी घाटों से घिरे हैं

Q.No: 55 The maximum strength of the Lok Sabha (House of the People) as stipulated by the Constitution is:

संविधान द्वारा निर्धारित लोक सभा (लोक सभा) की अधिकतम सदस्य संख्या है:

530 members

530 सदस्य

552 members

552 सदस्य

550 members

550 सदस्य

545 members

545 सदस्य

Q.No: 56 Which recent mission by ISRO aims to study the Sun from the Lagrange point L1?

इसरो का हाल ही में शुरू किया गया कौन-सा मिशन सूर्य का अध्ययन लैग्रेंज बिंदु L1 से करने के उद्देश्य से है?

Aditya-L1

आदित्य-एल1

Chandrayaan-3

चंद्रयान-3

Shukrayaan-1

शुक्रयान-1

Mangalyaan

मंगलयान

Q.No: 57 Name the state which is the largest producer of lignite coal?

वह राज्य जो लिग्नाइट कोयले का सबसे बड़ा उत्पादक है, कौन-सा है?

Maharashtra

महाराष्ट्र

Gujarat

गुजरात

Rajasthan

राजस्थान

Tamil Nadu

तमिलनाडु

Q.No: 58 Which Mauryan ruler is credited with the establishment of the spy system in his empire?

वह मौर्य सम्राट कौन था जिसे अपने साम्राज्य में गुप्तचर व्यवस्था की स्थापना का श्रेय दिया जाता है?

Bindusara

बिंदुसार

Brihadratha

बृहद्रथ

Ashoka

अशोक

Chandragupta Maurya

चंद्रगुप्त मौर्य

Q.No: 59 Which article provides for the appointment of Governors in India?

भारतीय संविधान का कौन-सा अनुच्छेद राज्यों में राज्यपाल की नियुक्ति का प्रावधान करता है?

Article 170

अनुच्छेद 170

Article 154

अनुच्छेद 154

Article 155

अनुच्छेद 155

Article 168

अनुच्छेद 168

Q.No: 60 Identify the following constitutional attributes with their respective democratic values:

Column A	Column B
a) Fundamental Duties	i. Grassroots democracy
b) Equal voting rights	ii. Respect for individual conscience
c) Local self-government provisions responsibilities	iii. Recognition of citizens'
d) Religious freedom assurance	iv. Principle of universal franchise

निम्नलिखित संवैधानिक विशेषताओं को उनके संबंधित लोकतांत्रिक मूल्यों के साथ पहचानें:

स्तंभ A	स्तंभ B
a) मौलिक कर्तव्य	i. जमीनी स्तर पर लोकतंत्र
b) समान मताधिकार	ii. व्यक्तिगत विवेक का सम्मान
c) स्थानीय स्वशासन प्रावधान जिम्मेदारियाँ	iii. नागरिकों की मान्यता
d) धार्मिक स्वतंत्रता आश्वासन	iv. सार्वभौमिक मताधिकार का सिद्धांत

a-ii, b-i, c-iv, d-iii

a-ii, b-i, c-iv, d-iii

a-i, b-ii, c-iii, d-iv

a-i, b-ii, c-iii, d-iv

a-iii, b-iv, c-i, d-ii

a-iii, b-iv, c-i, d-ii

a-iv, b-iii, c-ii, d-i

a-iv, b-iii, c-ii, d-i

Q.No: 61 Which Pala ruler is known for founding the great Buddhist university at Vikramashila?

विक्रमशिला में महान बौद्ध विश्वविद्यालय की स्थापना का श्रेय किस पाल शासक को दिया जाता है?

Dharmapala

धर्मपाल

Mahipala I

महिपाल प्रथम

Gopala I

गोपाल प्रथम

Devapala

देवपाल

Q.No: 62 Which of the following correctly represents the chronological order of human development during gestation?

निम्नलिखित में से कौन सा गर्भावस्था के दौरान मानव विकास के कालानुक्रमिक क्रम को सही ढंग से दर्शाता है?

Embryo → Zygote → Fetus

भ्रूणावस्था → युग्मनज → भ्रूण

Fetus → Embryo → Zygote

भ्रूण → भ्रूणावस्था → युग्मनज

Zygote → Embryo → Fetus

युग्मनज → भ्रूणावस्था → भ्रूण

Zygote → Fetus → Embryo

युग्मनज → भ्रूण → भ्रूणावस्था

Q.No: 63 Prime Minister Narendra Modi paid tribute to Thiru K. Kamaraj on his birth anniversary. He is remembered for his contributions to which of the following areas?

प्रधानमंत्री नरेंद्र मोदी ने थिरु के. कामराज को उनकी जयंती पर श्रद्धांजलि अर्पित की। उन्हें निम्नलिखित में से किस क्षेत्र में उनके योगदान के लिए याद किया जाता है?

Trade liberalization and digital governance

व्यापार उदारीकरण और डिजिटल शासन

Freedom struggle and social welfare governance

स्वतंत्रता संग्राम और सामाजिक कल्याण शासन

Industrialization and foreign policy

औद्योगीकरण और विदेश नीति

Q.No: 64 What was the primary impact of the 'License Raj' system on industrial growth in India before 1991?

1991 से पहले भारत में औद्योगिक विकास पर 'लाइसेंस राज' प्रणाली का प्राथमिक प्रभाव क्या था?

It created entry barriers, hindered expansion, and fostered inefficiency.

इससे प्रवेश में बाधाएं उत्पन्न हुईं, विस्तार में बाधा उत्पन्न हुई, तथा अकुशलता को बढ़ावा मिला।

It led to efficient resource allocation and increased competition.

इससे संसाधनों का कुशल आवंटन हुआ और प्रतिस्पर्धा बढ़ी।

It ensured balanced regional development and prevented monopolies.

इसने संतुलित क्षेत्रीय विकास सुनिश्चित किया और एकाधिकार को रोका।

It promoted rapid industrial diversification and innovation.

इसने तीव्र औद्योगिक विविधीकरण और नवाचार को बढ़ावा दिया।

Q.No: 65 Which of the following best describes the primary objective of a government's fiscal policy?

निम्नलिखित में से कौन सा कथन सरकार की राजकोषीय नीति के प्राथमिक उद्देश्य का सबसे अच्छा वर्णन करता है?

To control the money supply and interest rates.

मुद्रा आपूर्ति और ब्याज दरों को नियंत्रित करना।

To promote international trade and maintain a favorable balance of payments.

अंतर्राष्ट्रीय व्यापार को बढ़ावा देना और भुगतान संतुलन को अनुकूल बनाए रखना।

To influence aggregate demand and economic activity through government spending and taxation.

सरकारी व्यय और कराधान के माध्यम से समग्र मांग और आर्थिक गतिविधि को प्रभावित करना।

To regulate the stock market and financial institutions.

शेयर बाजार और वित्तीय संस्थाओं को विनियमित करना।

Q.No: 66 Given below are the statements in assertion and reason. Choose the correct options:

Assertion (A): AFI has incorporated WADA's 2014 anti-doping rules into its constitution.

Reason(R): Any updates to WADA rules are automatically binding on all athletes and affiliated units in AFI.

नीचे अनुमान और कारण में दिए गए बयानों को पढ़ें। सही विकल्प चुनें:

अनुमान (A): AFI ने WADA के 2014 के एंटी-डोपिंग नियमों को अपने संविधान में शामिल किया है।

कारण (R): WADA के नियमों में कोई भी अपडेट स्वचालित रूप से AFI में सभी एथलीटों और संबद्ध इकाइयों पर बाध्यकारी होते हैं।

A is true, but R is false.

A सही है, लेकिन R गलत है।

Both A and R are true, and R is the correct explanation of A.

A और R दोनों सच हैं, और R, A का सही स्पष्टीकरण है।

Both A and R are true, but R is not the correct explanation of A.

दोनों A और R सत्य हैं, लेकिन R A की सही व्याख्या नहीं है।

A is false, but R is true.

A गलत है, लेकिन R सही है।

Q.No: 67 In which decade did India experience a negative growth rate in population?

किस दशक में भारत में जनसंख्या वृद्धि दर नकारात्मक रही?

1901-1911

1901-1911

1931-1941

1931-1941

2001-2011

2001-2011

1911-1921

1911-1921

Q.No: 68	Which year was the first World Happiness Report published? प्रथम विश्व प्रसन्नता रिपोर्ट किस वर्ष प्रकाशित हुई थी?
2012	
2012	
2016	
2016	
2010	
2010	
2005	
2005	
Not Answered	

Q.No: 69	How can NISAR provide valuable information for understanding the relationship between fluid injection and earthquake? द्रव इंजेक्शन और भूकंप के बीच संबंध को समझने के लिए निसार (NISAR) किस प्रकार मूल्यवान जानकारी प्रदान कर सकता है?
By tracking changes in ground surface elevation associated with pumping and injection पम्पिंग और इंजेक्शन से जुड़े भू-सतह उन्नयन में परिवर्तन पर नज़र रखकर	
By measuring seismic activity in real time वास्तविक समय में भूकंपीय गतिविधि को मापकर	
By monitoring water table levels जल स्तर की निगरानी करके	
By analyzing satellite imagery of earthquake damage भूकंप से हुई क्षति की उपग्रह छवियों का विश्लेषण करके	
Not Answered	

Q.No: 70	Which of the following best captures the broader geopolitical shift triggered by the decisive defeat of the Nawab of Carnatic's forces in their confrontation with European powers? निम्नलिखित में से कौन सा कथन यूरोपीय शक्तियों के साथ टकराव में कर्नाटक के नवाब की सेना की निर्णायक हार से उत्पन्न व्यापक भू-राजनीतिक बदलाव को सबसे अच्छे ढंग से दर्शाता है?
It revealed systemic vulnerabilities in native military structures, prompting European companies to transition from trade to political hegemony. इसने देशी सैन्य संरचनाओं में प्रणालीगत कमजोरियों को उजागर किया, जिससे यूरोपीय कंपनियों को व्यापार से राजनीतिक आधिपत्य की ओर स्थानांतरित होने के लिए प्रेरित किया गया।	
It disillusioned European companies, resulting in a strategic withdrawal from inland military affairs. इससे यूरोपीय कम्पनियों का मोहभंग हो गया, जिसके परिणामस्वरूप अंतर्देशीय सैन्य मामलों से उनकी रणनीतिक वापसी हो गई।	
It consolidated indigenous authority, forcing European traders into commercial treaties under local oversight. इसने स्वदेशी प्राधिकार को सुदृढ़ किया, तथा यूरोपीय व्यापारियों को स्थानीय निगरानी में वाणिज्यिक संधियां करने के लिए बाध्य किया।	
It established a stable dual-administrative system between Indian principalities and foreign chartered companies. इसने भारतीय रियासतों और विदेशी चार्टर्ड कंपनियों के बीच एक स्थिर दोहरी-प्रशासनिक प्रणाली स्थापित की।	

Q.No: 71	The Aspirational Districts Programme (ADP) focuses on: आकांक्षी जिला कार्यक्रम (एडीपी) निम्नलिखित पर केंद्रित है:
Enhancing development in underdeveloped districts अविकसित जिलों में विकास को बढ़ावा देना	
Improving governance in urban areas शहरी क्षेत्रों में प्रशासन में सुधार करना	
Developing industrial clusters in backward regions पिछड़े क्षेत्रों में औद्योगिक क्लस्टरों का विकास करना	
Providing subsidies to small-scale industries लघु उद्योगों को सब्सिडी प्रदान करना	

Q.No: 72	Which of the following statements best explains why certain regions exhibit high population density?
----------	--

निम्नलिखित में से कौन सा कथन सबसे अच्छे ढंग से बताता है कि कुछ क्षेत्र उच्च जनसंख्या घनत्व क्यों प्रदर्शित करते हैं?

Regions offering fertile land, favorable climates, abundant natural resources, and robust economic opportunities are more likely to have high population densities.

उपजाऊ भूमि, अनुकूल जलवायु, प्रचुर प्राकृतिक संसाधन और मजबूत आर्थिक अवसर प्रदान करने वाले क्षेत्रों में जनसंख्या घनत्व अधिक होने की संभावना अधिक होती है।

High population density is predominantly found in areas with poor infrastructure and limited access to essential services.

उच्च जनसंख्या घनत्व मुख्यतः खराब बुनियादी ढांचे और आवश्यक सेवाओं तक सीमित पहुंच वाले क्षेत्रों में पाया जाता है।

Regions with limited natural resources tend to have Areas with scarce natural resources have higher population concentrations because of greater competition for few materials.

सीमित प्राकृतिक संसाधनों वाले क्षेत्रों में जनसंख्या का घनत्व अधिक होता है, क्योंकि वहां कुछ पदार्थों के लिए अधिक प्रतिस्पर्धा होती है। दुर्लभ प्राकृतिक संसाधनों वाले क्षेत्रों में जनसंख्या का घनत्व अधिक होता है, क्योंकि वहां कुछ पदार्थों के लिए अधिक प्रतिस्पर्धा होती है।

Areas characterized by mountainous terrain and arid climates often support dense populations because of their challenging living conditions.

पहाड़ी भूभाग और शुष्क जलवायु वाले क्षेत्र अक्सर चुनौतीपूर्ण जीवन स्थितियों के कारण घनी आबादी वाले होते हैं।

Q.No: 73 What is the role of the Speaker in case of a tied vote in the Lok Sabha election?

लोकसभा चुनाव में यदि वोटों की संख्या बराबरी पर हो, तो अध्यक्ष का क्या कार्य होता है?

Decides based on personal preference

व्यक्तिगत प्राथमिकता के आधार पर निर्णय लेना

Votes to break the tie

टाई को तोड़ने के लिए वोट

Does not participate

भाग नहीं लेते

Refers the decision to the President

निर्णय राष्ट्रपति के पास भेजना

Q.No: 74 Which government scheme aims to phase out unfit and polluting vehicles from India's roads to reduce emissions and boost automotive industry recycling?

किस सरकारी योजना का उद्देश्य उत्सर्जन को कम करने और ऑटोमोटिव उद्योग रीसाइक्लिंग को बढ़ावा देने के लिए भारत की सड़कों से अनुपयुक्त और प्रदूषणकारी वाहनों को हटाना है?

Smart City Mission

स्मार्ट सिटी मिशन

Voluntary Vehicle Fleet Modernisation Programme

स्वैच्छिक वाहन बेड़े आधुनिकीकरण कार्यक्रम

National Electric Mobility Mission Plan

राष्ट्रीय विद्युत गतिशीलता मिशन योजना

Pradhan Mantri Gramin Sadak Yojana

प्रधानमंत्री ग्रामीण सड़क योजना

Q.No: 75 Which constitutional features in India are linked to the Australian Constitution?

- A) Freedom of trade and commerce
- B) Joint sitting of the two Houses
- C) Federal structure with strong Centre
- D) Advisory jurisdiction of the Supreme Court

भारत में कौन सी संवैधानिक विशेषताएँ ऑस्ट्रेलियाई संविधान से जुड़ी हैं?

- ए) व्यापार और वाणिज्य की स्वतंत्रता
- बी) दोनों सदनों की संयुक्त बैठक
- सी) मजबूत केंद्र के साथ संघीय संरचना
- डी) सर्वोच्च न्यायालय का सलाहकार क्षेत्राधिकार

Only B

केवल बी

A and B both

ए और बी दोनों

A and C both

ए और सी दोनों

Only A

केवल ए

Q.No: 76 Which of the following initiatives was launched by the BRICS countries?

ब्रिक्स(BRICS) देशों द्वारा निम्नलिखित में से कौन सी पहल शुरू की गई?

The North Atlantic Treaty Organization (NATO)

उत्तर अटलांटिक संधि संगठन (नाटो)

The New Development Bank (NDB)

न्यू डेवलपमेंट बैंक (एनडीबी)

The World Trade Organization (WTO)

विश्व व्यापार संगठन (डब्ल्यूटीओ)

The International Monetary Fund (IMF)

अंतर्राष्ट्रीय मुद्रा कोष (आईएमएफ)

Q.No: 77 Read the below statements:

Statement I: The Sixth Five-Year Plan aimed at income growth and modernization of technology through various schemes.

Statement II: The Third Five-Year Plan failed due to various factors such as wars, rupee devaluation and food crisis.

Which of the above statements is/are correct?

नीचे दिए गए कथनों को पढ़ें:

कथन I: छठी पंचवर्षीय योजना का उद्देश्य विभिन्न योजनाओं के माध्यम से आय वृद्धि और प्रौद्योगिकी का आधुनिकीकरण करना था।

कथन II: तीसरी पंचवर्षीय योजना युद्ध, रुपये के अवमूल्यन और खाद्य संकट जैसे विभिन्न कारकों के कारण विफल रही।

उपर्युक्त कथनों में से कौन सा/से सही है/हैं?

Both statements I and II are incorrect

कथन I और II दोनों गलत हैं

Statement I is correct, Statement II is incorrect

कथन I सही है, कथन II गलत है

Statement I is incorrect, Statement II is correct

कथन I गलत है, कथन II सही है

Both statements I and II are correct

कथन I और II दोनों सही हैं

Q.No: 78 What was the recommendation of the Narasimham Committee-II regarding public sector banks?

नरसिंहम समिति-द्वितीय ने सार्वजनिक क्षेत्र के बैंकों को लेकर क्या सिफारिश की थी?

Reduce lending by public sector banks

सार्वजनिक बैंकों द्वारा ऋण में कटौती

Increase government ownership in public sector banks

सार्वजनिक क्षेत्र के बैंकों में सरकारी स्वामित्व में वृद्धि

Merge and consolidate public sector banks

सार्वजनिक क्षेत्र के बैंकों का विलय और समेकन

Privatize all public sector banks

सभी सार्वजनिक क्षेत्र के बैंकों का निजीकरण करना

Q.No: 79 Which of the following best reflects the scarcity problem in economics?

निम्नलिखित में से कौन सा अर्थशास्त्र में दुर्लभता की समस्या को सबसे अच्छी तरह से दर्शाता है?

Limited wants and unlimited resources

सीमित इच्छाएँ और असीमित संसाधन

Unlimited wants and unlimited resources

असीमित इच्छाएँ और असीमित संसाधन

Limited resources and unlimited wants

सीमित संसाधन और असीमित इच्छाएँ

Equal wants and equal resources

समान इच्छाएँ और समान संसाधन

Q.No: 80 Under which ministry does the National Productivity Council operate?

राष्ट्रीय उत्पादकता परिषद किस मंत्रालय के अधीन कार्य करती है?

Ministry of Education

शिक्षा मंत्रालय

Ministry of Commerce and Industry

वाणिज्य और उद्योग मंत्रालय

Ministry of Social Justice and Empowerment

सामाजिक न्याय एवं अधिकारिता मंत्रालय

Ministry of Agriculture

कृषि मंत्रालय

Q.No: 81 If a person view the Earth from above the North Pole, he will observe that the Earth rotates in:

यदि कोई व्यक्ति पृथ्वी को उत्तरी ध्रुव के ऊपर से देखे, तो वह देखेगा कि पृथ्वी घूमती है:

Anti-clockwise

वामावर्त

No rotation

कोई घुमाव नहीं

Random spin

यादृच्छिक स्पिन

Clockwise

दक्षिणावर्त

Q.No: 82 Which Article of the Constitution deals with the extent of executive power of the Union?

संविधान का कौन सा अनुच्छेद संघ की कार्यकारी शक्ति की सीमा से संबंधित है?

Article 78

अनुच्छेद 78

Article 75

अनुच्छेद 75

Article 52

अनुच्छेद 52

Article 73

अनुच्छेद 73

Q.No: 83 Read the following statements carefully and choose the correct option:

Assertion (A): The jaherthan plays a central role in the sacrificial rituals of Erok Sim.

Reason (R): The jaherthan is a sacred grove believed to be inhabited by spirits, including Jaherera, the Lady of the Sacred Grove.

निम्नलिखित कथनों को ध्यानपूर्वक पढ़ें और सही विकल्प चुनें:

कथन (A): एरोक सिम के बलिदान अनुष्ठानों में जाहेरथान एक केंद्रीय भूमिका निभाता है।

कारण (R): जाहेरथान एक पवित्र उपवन है जिसके बारे में माना जाता है कि इसमें पवित्र उपवन की देवी जाहेरेरा सहित कई आत्माएँ निवास करती हैं।

Both A and R are correct, but R does not explain A.

A और R दोनों सही हैं, लेकिन R, A की व्याख्या नहीं करता है।

Both A and R are correct, and R correctly explains A.

A और R दोनों सही हैं, तथा R, A की सही व्याख्या करता है।

A is correct, but R is incorrect.

A सही है, लेकिन R गलत है।

A is incorrect, but R is correct.

A गलत है, लेकिन R सही है।

Not Answered

Q.No: 84	The Battle of Samugarh was fought between Aurangzeb and which Mughal prince? समुगढ़ का युद्ध औरंगज़ेब और किस मुगल राजकुमार के बीच लड़ा गया था?
Jahangir	
जहांगीर	
Murad Baksh	
मुराद बख्श	
Shah Jahan	
शाहजहाँ	
Dara Shikoh	
दारा शिकोह	

Q.No: 85	Which Indian plateau is formed primarily by volcanic activity? भारत का कौन-सा पठार मुख्यतः ज्वालामुखीय गतिविधियों के कारण बना है?
Malwa Plateau	
मालवा पठार	
Shillong Plateau	
शिलॉंग पठार	
Chota Nagpur Plateau	
छोटा नागपुर पठार	
Deccan Plateau	
दक्कन पठार	

Q.No: 86	Evaluate the following about Carnatic instruments and choose the correct option: Statement 1: The Mridangam is a melodic percussion instrument used to outline the raga. Statement 2: Nadaswaram is a double-reed instrument traditionally played in temples and weddings. कर्नाटक वाद्ययंत्रों के बारे में निम्नलिखित का मूल्यांकन कीजिए और सही विकल्प चुनिए: कथन 1: मृदंगम एक मधुर ताल वाद्य है जिसका प्रयोग राग की रूपरेखा बनाने के लिए किया जाता है। कथन 2: नादस्वरम एक द्वि-रीड वाद्य है जिसे पारंपरिक रूप से मंदिरों और विवाह समारोहों में बजाया जाता है।
Only 1	
केवल 1	
Only 2	
केवल 2	
Both 1 and 2 are correct	
1 और 2 दोनों सही हैं	
Neither 1 nor 2 is correct	
न तो 1 और न ही 2 सही है	
Not Answered	

Q.No: 87	As per Chapter I (Preliminary) of the <i>Bharatiya Sakshya Adhiniyam, 2023</i> , which of the following is not applicable under the Act? भारतीय साक्ष्य अधिनियम, 2023 के अध्याय I (प्रारंभिक) के अनुसार, निम्नलिखित में से कौन सा अधिनियम के अंतर्गत लागू नहीं है ?
Hearings before a District Magistrate	
जिला मजिस्ट्रेट के समक्ष सुनवाई	
Affidavits submitted before court officer	
न्यायालय अधिकारी के समक्ष प्रस्तुत हलफनामे	
Trials before Military Court (Court-Martial)	
सैन्य न्यायालय (कोर्ट-मार्शल) के समक्ष मुकदमे	
Proceedings before Civil Judge Court	
सिविल जज कोर्ट के समक्ष कार्यवाही	

Q.No: 88	Which classical dance form is associated with the state of Kerala? कौन सी शास्त्रीय नृत्य शैली केरल राज्य से संबंधित है?
Kathak	
कथक	
Kuchipudi	
कुचिपुड़ी	
Kathakali	
कथकली	
Sattriya	
सत्रिया	

Q.No: 89	What does a lower GPI score indicate? कम GPI स्कोर क्या दर्शाता है?
Higher level of peace	
शांति का उच्चतर स्तर	
Greater military strength	
अधिक सैन्य शक्ति	
Higher risk of war	
युद्ध का अधिक खतरा	
Better environmental practices	
बेहतर पर्यावरणीय प्रथाएँ	

Q.No: 90	Consider the following statements: Statement I: Land and agriculture fall under the State List. Statement II: Marriage laws and adoption fall under the Concurrent List. Which of the statements given above is/are correct? निम्नलिखित कथनों पर विचार करें: कथन I: भूमि और कृषि राज्य सूची के अंतर्गत आते हैं। कथन II: विवाह कानून और गोद लेना समवर्ती सूची के अंतर्गत आते हैं। उपर्युक्त कथनों में से कौन सा/से सही है/हैं?
Only Statement I is correct	
केवल कथन I सही है	
Only Statement II is correct	
केवल कथन II सही है	
Both statements I and II are correct	
कथन I और II दोनों सही हैं	
Neither statement I nor II is correct	
न तो कथन I और न ही II सही है	

Q.No: 91	In May 2024, India signed a long-term agreement for the operation of Chabahar Port. What is the duration of this agreement? मई 2024 में भारत ने चाबहार बंदरगाह के संचालन के लिए दीर्घकालिक समझौते पर हस्ताक्षर किए। इस समझौते की अवधि क्या है?
20 years	
20 वर्ष	
10 years	
10 वर्ष	
99 years	
99 वर्ष	
5 years	
5 वर्ष	

Q.No: 92	<p>Consider the following statements about Udayagiri and Khandagiri caves:</p> <ol style="list-style-type: none"> 1. These caves are near Bhubaneswar and were meant for Jain monks. 2. All caves are shaped like flowers and are carved from independent boulders. 3. Each cave has multiple shrines dedicated to different Buddhist deities. <p>Which of the above is/are correct?</p> <p>उदयगिरि और खंडगिरि गुफाओं के बारे में निम्नलिखित कथनों पर विचार कीजिए:</p> <ol style="list-style-type: none"> 1. ये गुफाएँ भुवनेश्वर के पास हैं और जैन भिक्षुओं के लिए थीं। 2. सभी गुफाएँ फूलों के आकार की हैं और स्वतंत्र शिलाखंडों से तराशी गई हैं। 3. प्रत्येक गुफा में विभिन्न बौद्ध देवताओं को समर्पित कई मंदिर हैं। <p>उपरोक्त में से कौन सा/से सही है/हैं?</p>
Only 1	
केवल 1	
All 1, 2, and 3 are correct	
सभी 1, 2 और 3 सही हैं	
1 and 2 Only	
केवल 1 और 2	
2 and 3 Only	
केवल 2 और 3	

Q.No: 93	<p>Consider the following statements:</p> <ol style="list-style-type: none"> 1. A solar eclipse- The Moon casts a shadow on Earth when it comes between the Sun and Earth. 2. A lunar eclipse- During the new moon phase, the Moon passes through the Earth's shadow. <p>Which of the statements given above is/are correct?</p> <p>निम्नलिखित कथनों पर विचार करें:</p> <ol style="list-style-type: none"> 1. सूर्य ग्रहण- चंद्रमा सूर्य और पृथ्वी के बीच आने पर पृथ्वी पर छाया डालता है। 2. चंद्र ग्रहण- अमावस्या के दौरान, चंद्रमा पृथ्वी की छाया से होकर गुजरता है। <p>ऊपर दिए गए कथनों में से कौन सा सही है / हैं?</p>
Both 1 and 2	
1 और 2 दोनों	
1 only	
केवल 1	
2 only	
2 केवल	
Neither 1 nor 2	
न तो 1, न ही 2	

Q.No: 94	<p>How did the Medical Termination of Pregnancy (Amendment) Act, 2021 extend the legal abortion framework in India?</p> <p>गर्भपात (संशोधन) अधिनियम, 2021 के अंतर्गत भारत में वैधानिक गर्भपात के ढांचे को किस प्रकार विस्तारित किया गया?</p>
Increased gestational limit for termination to 24 weeks for special cases	
विशेष परिस्थितियों में गर्भपात की सीमा को 24 सप्ताह तक बढ़ाना	
Restricted abortion access only to married women	
केवल विवाहित महिलाओं के लिए गर्भपात की सीमित अनुमति	
Allowed termination solely on the discretion of healthcare providers	
केवल चिकित्सकीय सलाह पर गर्भपात की अनुमति देना	
Made abortion legal for all pregnancies up to 30 weeks	
सभी गर्भावस्थाओं के लिए 30 सप्ताह तक गर्भपात को वैध बनाना	

Q.No: 95	<p>What makes Dr. Avesh Kumar Tyagi's contributions in Atomic Energy distinct from conventional research output, as per his Vigyan Shri citation?</p> <p>डॉ. आवेश कुमार त्यागी के विज्ञान श्री प्रशस्ति पत्र के अनुसार, परमाणु ऊर्जा में उनके योगदान को पारंपरिक अनुसंधान से अलग क्या बनाता है?</p>
Strategic innovation in both materials and process R&D	
सामग्री और प्रक्रिया अनुसंधान एवं विकास दोनों में रणनीतिक नवाचार	
Discovery of a new radioactive element	
एक नए रेडियोधर्मी तत्व की खोज	

Advances in isotopic separation only

केवल समस्थानिक पृथक्करण में प्रगति

Development of radiation therapy devices

विकिरण चिकित्सा उपकरणों का विकास

Not Answered

Q.No: 96 Which of the following best describes the main purpose of developing Genetically Modified Organisms (GMOs) in agriculture?
निम्नलिखित में से कौन सा कथन कृषि में आनुवंशिक रूप से संशोधित जीवों (जीएमओ) को विकसित करने के मुख्य उद्देश्य का सबसे अच्छा वर्णन करता है?

To reduce the cost of manual weeding and irrigation only

केवल मैन्युअल निराई और सिंचाई की लागत को कम करने के लिए

To improve crop yield, pest resistance, and nutritional quality

फसल की पैदावार, कीट प्रतिरोध और पोषण गुणवत्ता में सुधार के लिए

To eliminate the need for fertilizers and pesticides entirely

उर्वरकों और कीटनाशकों की आवश्यकता को पूरी तरह से समाप्त करना

To grow crops only in artificial laboratory environments

केवल कृत्रिम प्रयोगशाला वातावरण में फसलें उगाना

Not Answered

Q.No: 97 In which country, the first Commonwealth Games held?

प्रथम कॉमनवेल्थ गेम्स किस देश में आयोजित हुए थे?

France

फ्रांस

Africa

अफ्रीका

India

भारत

Canada

कनाडा

Q.No: 98 The new criminal laws aim to replace British-era laws with a focus on:

नए आपराधिक कानूनों का उद्देश्य ब्रिटिश युग के कानूनों को प्रतिस्थापित करना है, जिनका ध्यान निम्नलिखित पर केन्द्रित होगा:

Political advantages

राजनीतिक लाभ

Religious governance

धार्मिक शासन

Corporate laws

कॉर्पोरेट कानून

Justice delivery and citizen rights

न्याय वितरण और नागरिक अधिकार

Q.No: 99 The 3-point line in basketball is drawn at what distance from the basket in international competitions?

अंतर्राष्ट्रीय प्रतियोगिताओं में बास्केटबॉल में 3-पॉइंट रेखा बास्केट से कितनी दूरी पर खींची जाती है?

6.25 meters

6.25 मीटर

7.25 meters

7.25 मीटर

5.75 meters

5.75 मीटर

6.75 meters

6.75 मीटर

Q.No: 100

Read the given below statements carefully and choose the correct option:

Assertion (A): The Chambal River is known for its badland topography called the Chambal ravines.

Reason (R): The Chambal flows through a deep gorge and eroded terrain before joining the Yamuna.

नीचे दिए गए कथनों को ध्यानपूर्वक पढ़ें और सही विकल्प चुनें:

कथन (A): चंबल नदी अपनी बंजर भूमि स्थलाकृति के लिए जानी जाती है जिसे चंबल बीहड़ कहा जाता है।

कारण (R): चंबल यमुना में मिलने से पहले एक गहरी घाटी और अपरदित भूभाग से होकर बहती है।

Both A and R are true, but R is not the correct explanation of A.

A और R दोनों सत्य हैं, लेकिन R, A का सही स्पष्टीकरण नहीं है।

Both A and R are true, and R is the correct explanation of A.

A और R दोनों सत्य हैं, तथा R, A का सही स्पष्टीकरण है।

A is true, but R is false.

A सत्य है, लेकिन R असत्य है।

A is false, but R is true.

A असत्य है, लेकिन R सत्य है।

PART - C (English Language and Comprehension)

Q.No: 101

Choose the correct sequence to form a meaningful sentence:

(A) the winner (B) declared (C) was (D) yesterday

CABD

ACBD

BCAD

CBAD

Q.No: 102

In the following passage, some words have been deleted. Read the passage carefully and select the most appropriate option to fill in each blank:

Progress in digital technology has (1) _____ transformed contemporary life. From artificial intelligence to smartphones, technologies are (2) _____ transforming industries and societies. But with speed comes (3) _____, as numerous workers are left uncertain about their future jobs. To adapt to this disruption, people need to be (4) _____, constantly renewing their (5) _____ to stay competitive.

Select the most appropriate option to fill in blank number 1.

marginally

sporadically

occasionally

drastically

Q.No: 103

In the following passage, some words have been deleted. Read the passage carefully and select the most appropriate option to fill in each blank:

Progress in digital technology has (1) _____ transformed contemporary life. From artificial intelligence to smartphones, technologies are (2) _____ transforming industries and societies. But with speed comes (3) _____, as numerous workers are left uncertain about their future jobs. To adapt to this disruption, people need to be (4) _____, constantly renewing their (5) _____ to stay competitive.

Select the most appropriate option to fill in blank number 2.

hesitantly

rarely

accidentally

invariably

Q.No: 104 In the following passage, some words have been deleted. Read the passage carefully and select the most appropriate option to fill in each blank:

Progress in digital technology has (1) _____ transformed contemporary life. From artificial intelligence to smartphones, technologies are (2) _____ transforming industries and societies. But with speed comes (3) _____, as numerous workers are left uncertain about their future jobs. To adapt to this disruption, people need to be (4) _____, constantly renewing their (5) _____ to stay competitive.

Select the most appropriate option to fill in blank number 3.

celebration

incentive

harmony

disruption

Q.No: 105 In the following passage, some words have been deleted. Read the passage carefully and select the most appropriate option to fill in each blank:

Progress in digital technology has (1) _____ transformed contemporary life. From artificial intelligence to smartphones, technologies are (2) _____ transforming industries and societies. But with speed comes (3) _____, as numerous workers are left uncertain about their future jobs. To adapt to this disruption, people need to be (4) _____, constantly renewing their (5) _____ to stay competitive.

Select the most appropriate option to fill in blank number 4.

proactive

stubborn

reactive

adaptable

Q.No: 106 In the following passage, some words have been deleted. Read the passage carefully and select the most appropriate option to fill in each blank:

Progress in digital technology has (1) _____ transformed contemporary life. From artificial intelligence to smartphones, technologies are (2) _____ transforming industries and societies. But with speed comes (3) _____, as numerous workers are left uncertain about their future jobs. To adapt to this disruption, people need to be (4) _____, constantly renewing their (5) _____ to stay competitive.

Select the most appropriate option to fill in blank number 5.

strategies

diversions

obstacles

competencies

Q.No: 107	<p>Read the passage and answer the questions:</p> <p>As artificial intelligence (AI) technologies continue to proliferate across every sector of human activity, the ethical implications of their deployment have become a matter of urgent concern. Once relegated to the realm of speculative fiction, AI now permeates decision-making in fields as diverse as healthcare, finance, education, and criminal justice. While proponents argue that AI can increase efficiency, reduce human bias, and democratize access to services, critics warn of the potential for algorithmic discrimination, erosion of privacy, and the deepening of existing social inequalities.</p> <p>At the heart of the debate lies a fundamental tension between technological progress and moral responsibility. Machines, no matter how sophisticated, lack consciousness and intrinsic values; they merely execute instructions based on data inputs and programmed algorithms. Thus, when an AI system makes a life-altering decision—such as denying a loan application or predicting a defendant's likelihood of reoffending—it is not the machine itself that is accountable, but the human architects behind its creation and training.</p> <p>Moreover, the opacity of many AI systems, often referred to as the "black box" problem, poses a significant ethical challenge. When even developers cannot fully explain how a machine arrived at a given outcome, the prospect of ensuring fairness, transparency, and accountability becomes deeply problematic. Addressing these concerns will require not only technical innovations, such as explainable AI, but also rigorous interdisciplinary collaboration between engineers, ethicists, policymakers, and the public.</p> <p>Which of the following correctly identifies the tense used predominantly in the first paragraph?</p>
	Past perfect
	Present continuous
	Present perfect continuous
	Present simple

Q.No: 108	<p>Read the passage and answer the questions:</p> <p>As artificial intelligence (AI) technologies continue to proliferate across every sector of human activity, the ethical implications of their deployment have become a matter of urgent concern. Once relegated to the realm of speculative fiction, AI now permeates decision-making in fields as diverse as healthcare, finance, education, and criminal justice. While proponents argue that AI can increase efficiency, reduce human bias, and democratize access to services, critics warn of the potential for algorithmic discrimination, erosion of privacy, and the deepening of existing social inequalities.</p> <p>At the heart of the debate lies a fundamental tension between technological progress and moral responsibility. Machines, no matter how sophisticated, lack consciousness and intrinsic values; they merely execute instructions based on data inputs and programmed algorithms. Thus, when an AI system makes a life-altering decision—such as denying a loan application or predicting a defendant's likelihood of reoffending—it is not the machine itself that is accountable, but the human architects behind its creation and training.</p> <p>Moreover, the opacity of many AI systems, often referred to as the "black box" problem, poses a significant ethical challenge. When even developers cannot fully explain how a machine arrived at a given outcome, the prospect of ensuring fairness, transparency, and accountability becomes deeply problematic. Addressing these concerns will require not only technical innovations, such as explainable AI, but also rigorous interdisciplinary collaboration between engineers, ethicists, policymakers, and the public.</p> <p>Identify the correct type of sentence used in the line:</p> <p>"At the heart of the debate lies a fundamental tension between technological progress and moral responsibility."</p>
	Compound
	Complex
	Simple
	Compound-Complex

Q.No: 109	<p>Read the passage and answer the questions:</p> <p>As artificial intelligence (AI) technologies continue to proliferate across every sector of human activity, the ethical implications of their deployment have become a matter of urgent concern. Once relegated to the realm of speculative fiction, AI now permeates decision-making in fields as diverse as healthcare, finance, education, and criminal justice. While proponents argue that AI can increase efficiency, reduce human bias, and democratize access to services, critics warn of the potential for algorithmic discrimination, erosion of privacy, and the deepening of existing social inequalities.</p> <p>At the heart of the debate lies a fundamental tension between technological progress and moral responsibility. Machines, no matter how sophisticated, lack consciousness and intrinsic values; they merely execute instructions based on data inputs and programmed algorithms. Thus, when an AI system makes a life-altering decision—such as denying a loan application or predicting a defendant’s likelihood of reoffending—it is not the machine itself that is accountable, but the human architects behind its creation and training.</p> <p>Moreover, the opacity of many AI systems, often referred to as the "black box" problem, poses a significant ethical challenge. When even developers cannot fully explain how a machine arrived at a given outcome, the prospect of ensuring fairness, transparency, and accountability becomes deeply problematic. Addressing these concerns will require not only technical innovations, such as explainable AI, but also rigorous interdisciplinary collaboration between engineers, ethicists, policymakers, and the public.</p> <p>What does the word "proliferate" most nearly mean as used in the passage?</p>
	Decline slowly
	Spread rapidly
	Change unpredictably
	Improve steadily

Q.No: 110	<p>Read the passage and answer the questions:</p> <p>As artificial intelligence (AI) technologies continue to proliferate across every sector of human activity, the ethical implications of their deployment have become a matter of urgent concern. Once relegated to the realm of speculative fiction, AI now permeates decision-making in fields as diverse as healthcare, finance, education, and criminal justice. While proponents argue that AI can increase efficiency, reduce human bias, and democratize access to services, critics warn of the potential for algorithmic discrimination, erosion of privacy, and the deepening of existing social inequalities.</p> <p>At the heart of the debate lies a fundamental tension between technological progress and moral responsibility. Machines, no matter how sophisticated, lack consciousness and intrinsic values; they merely execute instructions based on data inputs and programmed algorithms. Thus, when an AI system makes a life-altering decision—such as denying a loan application or predicting a defendant’s likelihood of reoffending—it is not the machine itself that is accountable, but the human architects behind its creation and training.</p> <p>Moreover, the opacity of many AI systems, often referred to as the "black box" problem, poses a significant ethical challenge. When even developers cannot fully explain how a machine arrived at a given outcome, the prospect of ensuring fairness, transparency, and accountability becomes deeply problematic. Addressing these concerns will require not only technical innovations, such as explainable AI, but also rigorous interdisciplinary collaboration between engineers, ethicists, policymakers, and the public.</p> <p>In the context of the passage, the phrase "algorithmic discrimination" most likely refers to:</p>
	Computers correcting human mistakes.
	AI systems treating individuals unfairly based on biased programming.
	AI systems achieving perfect objectivity.
	The classification of data without errors.

Q.No: 111	<p>Read the passage and answer the questions:</p> <p>As artificial intelligence (AI) technologies continue to proliferate across every sector of human activity, the ethical implications of their deployment have become a matter of urgent concern. Once relegated to the realm of speculative fiction, AI now permeates decision-making in fields as diverse as healthcare, finance, education, and criminal justice. While proponents argue that AI can increase efficiency, reduce human bias, and democratize access to services, critics warn of the potential for algorithmic discrimination, erosion of privacy, and the deepening of existing social inequalities.</p> <p>At the heart of the debate lies a fundamental tension between technological progress and moral responsibility. Machines, no matter how sophisticated, lack consciousness and intrinsic values; they merely execute instructions based on data inputs and programmed algorithms. Thus, when an AI system makes a life-altering decision—such as denying a loan application or predicting a defendant’s likelihood of reoffending—it is not the machine itself that is accountable, but the human architects behind its creation and training.</p> <p>Moreover, the opacity of many AI systems, often referred to as the "black box" problem, poses a significant ethical challenge. When even developers cannot fully explain how a machine arrived at a given outcome, the prospect of ensuring fairness, transparency, and accountability becomes deeply problematic. Addressing these concerns will require not only technical innovations, such as explainable AI, but also rigorous interdisciplinary collaboration between engineers, ethicists, policymakers, and the public.</p> <p>According to the passage, what is one major obstacle to ensuring fairness and accountability in AI systems?</p>
	<p>The high cost of building AI models.</p> <p>The limited availability of data scientists.</p> <p>The inability to fully explain how AI systems reach conclusions.</p> <p>The lack of government funding.</p>

Q.No: 112	<p>In the following passage, some words have been omitted. Read the passage carefully and choose the most appropriate option from the given alternatives to fill in each blank. Mark your answer for each question.</p> <p>As artificial intelligence becomes more integrated into daily life, debates around its ethical use are growing louder. Machines now make decisions that were once the (1)_____ of human judgment—from recommending medical treatments to scanning resumes. While AI offers speed and efficiency, it lacks moral (2)_____ raising concerns about bias, accountability, and transparency. Critics argue that without strict ethical frameworks, AI could reinforce social inequalities or even make harmful choices with no clear line of (3)_____. Developers face the challenge of embedding values into code—yet whose values should apply? In multicultural societies, defining what is “right” is rarely (4)_____. Some suggest collaborative oversight involving ethicists, technologists, and policymakers. Others warn that regulation must evolve faster than innovation to prevent misuse. In the race to build smarter systems, the real question remains: can we create machines that are not just intelligent, but also (5)_____?</p> <p>(1)</p>
	<p>domain</p> <p>version</p> <p>burden</p> <p>process</p>

Q.No: 113	<p>In the following passage, some words have been omitted. Read the passage carefully and choose the most appropriate option from the given alternatives to fill in each blank. Mark your answer for each question.</p> <p>As artificial intelligence becomes more integrated into daily life, debates around its ethical use are growing louder. Machines now make decisions that were once the (1)_____ of human judgment—from recommending medical treatments to scanning resumes. While AI offers speed and efficiency, it lacks moral (2)_____ raising concerns about bias, accountability, and transparency. Critics argue that without strict ethical frameworks, AI could reinforce social inequalities or even make harmful choices with no clear line of (3)_____. Developers face the challenge of embedding values into code—yet whose values should apply? In multicultural societies, defining what is “right” is rarely (4)_____. Some suggest collaborative oversight involving ethicists, technologists, and policymakers. Others warn that regulation must evolve faster than innovation to prevent misuse. In the race to build smarter systems, the real question remains: can we create machines that are not just intelligent, but also (5)_____?</p> <p>(2)</p>
	<p>clarity</p> <p>depth</p> <p>instinct</p>

Q.No: 114 In the following passage, some words have been omitted. Read the passage carefully and choose the most appropriate option from the given alternatives to fill in each blank. Mark your answer for each question.

As artificial intelligence becomes more integrated into daily life, debates around its ethical use are growing louder. Machines now make decisions that were once the (1)_____ of human judgment—from recommending medical treatments to scanning resumes. While AI offers speed and efficiency, it lacks moral (2)_____ raising concerns about bias, accountability, and transparency. Critics argue that without strict ethical frameworks, AI could reinforce social inequalities or even make harmful choices with no clear line of (3)_____. Developers face the challenge of embedding values into code—yet whose values should apply? In multicultural societies, defining what is “right” is rarely (4)_____. Some suggest collaborative oversight involving ethicists, technologists, and policymakers. Others warn that regulation must evolve faster than innovation to prevent misuse. In the race to build smarter systems, the real question remains: can we create machines that are not just intelligent, but also (5)_____?

(3)

argument

command

accountability

conduct

Q.No: 115 In the following passage, some words have been omitted. Read the passage carefully and choose the most appropriate option from the given alternatives to fill in each blank. Mark your answer for each question.

As artificial intelligence becomes more integrated into daily life, debates around its ethical use are growing louder. Machines now make decisions that were once the (1)_____ of human judgment—from recommending medical treatments to scanning resumes. While AI offers speed and efficiency, it lacks moral (2)_____ raising concerns about bias, accountability, and transparency. Critics argue that without strict ethical frameworks, AI could reinforce social inequalities or even make harmful choices with no clear line of (3)_____. Developers face the challenge of embedding values into code—yet whose values should apply? In multicultural societies, defining what is “right” is rarely (4)_____. Some suggest collaborative oversight involving ethicists, technologists, and policymakers. Others warn that regulation must evolve faster than innovation to prevent misuse. In the race to build smarter systems, the real question remains: can we create machines that are not just intelligent, but also (5)_____?

(4)

visible

consistent

obvious

universal

Q.No: 116 In the following passage, some words have been omitted. Read the passage carefully and choose the most appropriate option from the given alternatives to fill in each blank. Mark your answer for each question.

As artificial intelligence becomes more integrated into daily life, debates around its ethical use are growing louder. Machines now make decisions that were once the (1)_____ of human judgment—from recommending medical treatments to scanning resumes. While AI offers speed and efficiency, it lacks moral (2)_____ raising concerns about bias, accountability, and transparency. Critics argue that without strict ethical frameworks, AI could reinforce social inequalities or even make harmful choices with no clear line of (3)_____. Developers face the challenge of embedding values into code—yet whose values should apply? In multicultural societies, defining what is “right” is rarely (4)_____. Some suggest collaborative oversight involving ethicists, technologists, and policymakers. Others warn that regulation must evolve faster than innovation to prevent misuse. In the race to build smarter systems, the real question remains: can we create machines that are not just intelligent, but also (5)_____?

(5)

controlled

obedient

ethical

productive

Q.No: 117	Select the option that expresses the given sentence in Direct to Indirect Speech. She said, "O that I were a bird!"
She said that she wished she were a bird!	
She said that she has been a bird.	
She said that she wanted to be a bird.	
She said that she was a bird.	

Q.No: 118	Find the incorrect part of the sentence: She is angry upon me.
me	
No error	
angry upon	
She is	

Q.No: 119	In the following question, the first and the last parts of the sentence/passage are numbered 1 and 6. The rest of the sentence/passage is split into four parts — P, Q, R, and S. These four parts are not given in their proper order. Read the sentence/passage and find the most logical order of the parts between 1 and 6. Economic inflation affects both consumers and businesses. P: Businesses struggle to maintain profit margins. Q: Rising prices reduce the purchasing power of individuals. R: Governments may intervene through monetary policy. S: It creates uncertainty in long-term investment planning. 6. Managing inflation is crucial for economic stability.
QPRS	
PQRS	
QRSP	
SQPR	

Q.No: 120	Choose the correct meaning of idiom: 'Face the music'
Poor Weather	
Bear consequences	
Earn Money	
Give money	

Q.No: 121	Choose the one which can be substituted for the given sentence. A person's peculiar habit or mannerism
Idiosyncrasy	
Illusion	
Hypocrisy	
Eccentricity	

Q.No: 122	Which of the given options is the most logical sequence of the following sentences to form a meaningful paragraph? 1. Cybersecurity is a growing concern in the digital age. 2. Strong passwords, encryption, and awareness can help prevent cybercrimes. 3. Hackers use advanced techniques to steal personal and financial data. 4. It means protecting computer systems from attacks by hackers.
2-3-1-4	
1-4-3-2	
4-1-3-2	
3-2-4-1	

Q.No: 123	Select the option that expresses the given sentence in Direct to Indirect Speech. The man said, "Be quiet and listen carefully."
The man said to be quiet and to listen carefully.	
The man ordered them to be quiet and listen carefully.	
The man asked to be quiet and listen.	
The man advised them to be quiet.	

Q.No: 124	Find the incorrect part of the sentence: I returned back from Mumbai last week.
last week	
from Mumbai	
No error	
I returned back	

Q.No: 125	Convert the sentence provided below from its passive voice structure to an active voice structure: The keys were found by him under the old wooden table.
He finds the keys under the old wooden table.	
He was finding the keys under the old wooden table.	
He is finding the keys under the old wooden table.	
He found the keys under the old wooden table.	

Q.No: 126	Select the most appropriate option to fill in the blank. She has great affection ____ her brother.
to	
of	
with	
for	

Q.No: 127	Select the synonym of Conundrum .
-----------	--

Triumph

Celebration

Harmony

Problem

Q.No: 128 Select the most appropriate option to improve the bold part of the sentence.
This is the boy **who he stole** the purse.

who had stole

which stole

whom stole

who stole

Q.No: 129 Fill in the blank with appropriate prepositions.

Mahesh threw the ball _____ his friend, but he could not catch it.

at

against

to

for

Q.No: 130 Select the synonym of **Defer**.

Decline

Delay

Reject

Proceed

Q.No: 131 Select the most appropriate option to fill in the blank.
The students were keen ____ participating.

on

with

for

in

Q.No: 132 Transform the following sentence into active voice.

This law which was passed in the parliament last year should have been reviewed properly by the members of the committee.

The parliament should have reviewed the law properly, which the members of the committee passed last year.

The members of the committee should have reviewed the law properly, which the parliament passed last year.

The law should have reviewed the members of the committee properly which the parliament passed last year.

The members of the committee should have reviewed the law properly, which was passed in the parliament last year.

Q.No: 133	Select the correct active form of the given sentence. "The plants were watered by the gardener every morning."
The gardener has watered the plants every morning.	
The gardener waters the plants every morning.	
The gardener watered the plants every morning.	
The gardener is watering the plants every morning.	

Q.No: 134	Select the correct active form of the given sentence. "The walls are being painted by the workers."
The workers painted the walls.	
The workers were painting the walls.	
The workers are painting the walls.	
The workers paint the walls.	

Q.No: 135	Select the most appropriate option to improve the bold part of the sentence. She is my cousin sister .
cousin sibling	
own cousin	
cousin girl	
cousin	

Q.No: 136	Select the most appropriate option to fill in the blank. The minister was apprised ____ the current situation.
to	
about	
of	
at	

Q.No: 137	Choose the correct synonym of 'Juvenile':
childish	
Ancient	
Grown-up	
Elder	

Q.No: 138	Select the most appropriate option to fill in the blank. The book consists ____ ten chapters.
in	
from	
by	
of	

Q.No: 139	Choose the most suitable option to replace the underlined part of the sentence. If the sentence is already correct, select 'No substitution required'. She <u>aren't believe</u> in wasting time during working hours.
isn't believe	
No substitution required	
wasn't believes	
doesn't believe	

Q.No: 140	Select the option that expresses the given sentence in Direct to Indirect Speech. She said, "I need some rest."
She said that she needed some rest.	
She said that she needs some rest.	
She said that she had needed some rest.	
She said that she will need some rest.	

Q.No: 141	What does the idiom 'Face the music' mean?
Run away	
Confront difficulties	
Hide feelings	
Avoid trouble	

Q.No: 142	In the following question, the first and the last parts of the sentence/passage are numbered 1 and 6... The digital divide continues to deepen social inequalities. P. Unequal access to the internet limits educational opportunities. Q. Those in rural or underserved areas lag behind. R. It prevents skill development and employment access. S. Technology's benefits are unequally distributed. 6. Bridging this gap is critical for inclusive growth.
SQPR	
SPRQ	
PQRS	
QPRS	

Q.No: 143	Select the synonym of Alacrity .
Sluggishness	
Hesitation	
Eagerness	
Delay	

Q.No: 144	Choose the correct option to complete the sentence. She read the story aloud to the class in a calm and steady ____.
monoton	

meaner

miner

manor

Q.No: 145 Convert the sentence provided below from its passive voice structure to an active voice structure:
The letter has been written by the manager carefully.

The manager was writing the letter carefully.

The manager will write the letter carefully.

The manager is writing the letter carefully.

The manager has written the letter carefully.

Q.No: 146 Arrange the sentence parts:
(A) his advice (B) the students (C) accepted (D) happily

BACD

BADC

BCAD

ABCD

Q.No: 147 Which of the following sentences correctly uses the idiom "A picture is worth a thousand words"?

I prefer reading detailed descriptions rather than looking at images, even though a picture is worth a thousand words.

The beautiful photograph captured the tragedy so well that no words were needed—truly, a picture is worth a thousand words.

Since she couldn't take a picture, she decided to write a long paragraph, as a picture is worth a thousand words.

He described the entire scene in detail because a picture is worth a thousand words.

Q.No: 148 Which among the following sentences uses the article (if required) before the word 'honour' correctly?

It is the honour to be here.

It is an honour to be here.

It is honour to be here.

It is a honour to be here.

Q.No: 149 In the following question, the first and the last parts of the sentence/passage are numbered 1 and 6. The rest of the sentence/passage is split into four parts — P, Q, R, and S. These four parts are not given in their proper order. Read the sentence/passage and find the most logical order of the parts between 1 and 6.

Honeybees are vital for pollination. P: They transfer pollen between flowers. Q: This helps in the growth of fruits and seeds. R: Without bees, many crops would fail. S: But bee populations are declining globally. 6. Protecting bees is essential for food security.

PSQR

PRQS

PQRS

RPQS

Q.No: 150	<p>In the following question, the first and the last parts of the sentence/passage are numbered 1 and 6. The rest of the sentence/passage is split into four parts — P, Q, R, and S. These four parts are not given in their proper order. Read the sentence/passage and find the most logical order of the parts between 1 and 6.</p> <p>Art is a reflection of society. P: It communicates emotions beyond words. Q: From cave paintings to modern murals, art evolves. R: Artists express views on culture, politics, and identity. S: It also raises awareness on social issues. 6. Hence, art holds immense power in society.</p>
QPRS	
QRPS	
PRQS	
RSPQ	

Q.No: 151	<p>Find the incorrect part of the sentence: She congratulated him for his success.</p>
No error	
aim for	
his success!	
She congratulated	

Q.No: 152	Which spelling is correct for a leadership role?
lieutenant	
Luitenant	
Lieutanant	
Leuitenant	

Q.No: 153	<p>Select the most appropriate option to improve the bold part of the sentence. She is married with a doctor.</p>
in a doctor	
to a doctor	
by a doctor	
from a doctor	

Q.No: 154	<p>Arrange the sentence parts: (A) by the end of the year (B) complete (C) the construction company (D) promised to</p>
CADE	
DACB	
ACBD	
CDAB	

Q.No: 155	<p>Select the most appropriate homonym. The new CEO will chair the meeting.</p>
Observe	
Preside over	

Cancel
Furniture

Q.No: 156	Identify the part containing a grammatical or structural error: No sooner he had arrived than the meeting started.
he had arrived	
No error	
No sooner	
than the meeting started	

Q.No: 157	Choose the antonym of 'lucid':
Transparent	
Clear	
Vague	
Coherent	

Q.No: 158	Choose the correct indirect speech form of the following sentence. Rukmini said to Sanjana, "Why didn't you appear in the UPSC Preliminary Examination last year?"
Rukmini asked Sanjana why had she not appeared in the UPSC Preliminary Examination the previous year.	
Rukmini asked Sanjana why she had not appeared in the UPSC Preliminary Examination the previous year.	
Rukmini told Sanjana why she had not appeared in the UPSC Preliminary Examination the last year.	
Rukmini asked Sanjana why she did not appear in the UPSC Preliminary Examination last year.	

Q.No: 159	Find the incorrect part of the sentence: The officer has issued an order to arrest him immediately.
The officer	
No error	
has issued	
an order to arrest him immediately	

Q.No: 160	What does the idiom 'Spill the beans' mean?
Waste food	
Hide a fact	
Reveal a secret	
Lose patience	

Q.No: 161	Select the most appropriate option to improve the bold part of the sentence. I came to know this from a friend.
to know this through	

to know that from
to know of it from
to know it by

Q.No: 162	Choose the correct indirect speech form of the following sentence. They said, "Please bring the basket here."
They requested to take the basket here.	
They requested me to take the basket there.	
They requested me to bring the basket there.	
They requested me to bring the basket here.	

Q.No: 163	Choose the correctly spelt word:
Reconcile	
Reconsile	
Reconeile	
Reconcil	

Q.No: 164	Fill in the blank with the appropriate tense. The student _____ his homework yet.
have not completed	
did not complete	
was not completed	
has not completed	

Q.No: 165	Select the correct passive form of the given sentence. "He wrote the letter."
The letter was written by him.	
The letter is written by him.	
The letter wrote by him.	
The letter had been wrote.	

Q.No: 166	Which of the following refers to the branch of science concerned with the study of sound, its production, transmission, and effects?
Acoustics	
Geology	
Thermodynamics	
Optics	

Q.No: 167	Select the correct passive form of the given sentence. "The editor has approved the final version."
The final version has been approved by the editor.	
The final version was approved by the editor.	
The final version was being approved.	
The final version is approved.	

Q.No: 168	Select the synonym of Summon .
Send	
Disperse	
Drive	
Call	

Q.No: 169	Choose the sentence that uses the homonym of the underlined word: The <u>wind</u> howled through the trees.
The wind was cold and sharp at night.	
The wind knocked over the garbage can.	
A sudden gust of wind blew her hat away.	
He had to wind the old clock manually.	

Q.No: 170	Choose the antonym of 'benevolent':
Humane	
Generous	
Kind	
Malevolent	

Q.No: 171	Choose the correct indirect speech form of the following sentence. He said to Renuka, "We must do it now and go there as soon as possible."
He told Renuka that they must do it then and go there as soon as possible.	
He told Renuka that they have to do it now and go there as soon as possible.	
He told Renuka that they must do it now and go here as soon as possible.	
He told Renuka that they had to do it then and go there as soon as possible.	

Q.No: 172	Rearrange the following steps of the national census process in the correct order: P. Enumerators visit households to collect data Q. Data is compiled and analyzed at central offices R. The government announces census dates and guidelines S. A final census report is published and shared with the public
P → Q → S → R	
S → Q → P → R	

$R \rightarrow P \rightarrow Q \rightarrow S$

$P \rightarrow Q \rightarrow S \rightarrow R$

Q.No: 173 Select the most appropriate option to fill in the blank.
She was annoyed ____ the noise.

by

to

at

with

Q.No: 174 Identify the error in the sentence.
He made a quick shower before heading to the office.

quick

shower

before

made

Q.No: 175 Choose the antonym of 'inflate':

Increase

Reduce

Expand

Swell

Q.No: 176 Select the most appropriate option to improve the bold part of the sentence.
Seldom **we have seen** such a performance.

had we seen

did we saw

have we seen

we had seen

Q.No: 177 Identify the error in the sentence.
Mount Everest is more highest peak in the world.

world

more

highest

everest

Q.No: 178 What does the idiom 'Steal someone's thunder' mean?

Mock them

Take credit for their work

Help them

Ignore them

Q.No: 179 Choose the correct one-word substitution for:
"A speech delivered without preparation"

Soliloquy

Rebuttal

Monologue

Impromptu

Q.No: 180 Choose the sentence that uses a homonym of the underlined word:
He bought a ticket for the evening show.

That was the best stage show I've seen.

The magic show was amazing

We're attending the school show tomorrow.

The farmers decided to show their livestock

Q.No: 181 Choose the correct one-word substitution for:
"the act of placing a dead person in a grave."

Interment

Funeral

Rebellion

Coronation

Q.No: 182 Choose the correct direct speech form of the following sentence.

He said that this had been in the box.

He said, "This was in the box."

He said, "This had in the box."

He said, "That have in the box."

He said that, "It is in the box."

Q.No: 183 Identify the part containing a grammatical or structural error:
The teacher advised to listen attentively.

to listen attentively

No error

The teacher

advised

Q.No: 184	Find the misspelt word.
Perspicacious	
Perspicious	
loneliness	
lightning	

Q.No: 185	Select the correct active form. "The article ought to have been revised by the editor."
The editor ought to have revised the article.	
The editor ought to be revising the article.	
The editor ought to revise the article.	
The editor must have revised the article.	

Q.No: 186	Choose the most suitable option to replace the underlined part of the sentence. If the sentence is already correct, select 'No substitution required'. The students <u>was asked</u> to submit their assignments by Friday.
are asked to submitted their assignments	
No substitution required	
were asked to submit their assignments	
will asked to submit their assignments	

Q.No: 187	Identify the error in the sentence. She danced graceful on stage during the annual show.
graceful	
stage	
show	
during	

Q.No: 188	Choose the antonym of 'Wan'.
Tiring	
Healthy	
Long	
Wearisome	

Q.No: 189	Choose the one-word substitution for the following sentence. Someone who has been forced to flee his or her country because of persecution, war or violence.
Shelter	
Asylum	
Refugee	

Sanctuary

Q.No: 190 Choose the misspelt word in this list.

Aesthetics

Coercion

Iridescent

Bureaucracy

Q.No: 191 Select the most appropriate option to improve the bold part of the sentence.
The doctor advised that he **takes rest**.

must takes rest

take rest

take the rest

should takes rest

Q.No: 192 What is the meaning of the word "spendthrift"?

A person who spends money recklessly

A person who invests money wisely

A person who saves money

A person who borrows money

Q.No: 193 Select the most appropriate homonym.
His name has been **cleared** of all charges.

Shifted

Removed

Made clean

Exonerated

Q.No: 194 Choose the antonym of 'hostile':

Friendly

Aggressive

Rude

Bitter

Q.No: 195 Choose the correct direct speech form of the following sentence.

Rima said that if she had wings, she would fly in the sky.

Rima said, "If I had wings, I would fly in the sky."

Rima said, "If I had wings, I will fly in the sky."

Rima said, "If I have wings, I would fly in the sky."

Rima said, "If I have wings, I will flew in the sky."

Q.No: 196 Select the most appropriate option to fill in the blank.
The teacher advised him to abstain ____ bad company.

with

of

for

from

Q.No: 197 Choose the antonym of 'dominate':

Rule

Submit

Govern

Control

Q.No: 198 Select the correct passive form of the given sentence.
"The mechanic may be checking the brakes now."

The brakes may checked now.

The brakes may be being checked now.

The brakes may be checking now.

The brakes may be check now.

Q.No: 199 Select the most appropriate option to improve the bold part of the sentence.
They returned back **to their home**.

returned to house

came back to home

returned home

went back home

Q.No: 200 Choose the correct direct speech form of the following sentence.

Meenal told Renu that she had been a very good football player.

Meenal said to Renu, "I was a very good football player."

Meenal said to Renu, "I am a very good football player."

Meenal said to Renu, "You have being a very good football player."

Meenal said to Renu, "You had a very good football player."



SSC ONLINE EXAMINATION

CANDIDATE RESPONSE SHEET/GRIEVANCE SYSTEM

[View Your Responses](#)[Click Here Grievance About Question](#)[Click Here View Grievance Questions](#)Admin loggedin.[[Logout](#)]

Exam Name : Steno Grade C and D ▼

Test Date : 07 Aug 2025

Test Time : 01:15 PM

Centre : BRGAY227_MAA SARSWATI IT SOLUTION_050403

Correct Option selected Wrong Option selected Correct Option Not Answered

PART - A (General Intelligence & Reasoning)

Q.No: 1 A product priced at INR 500 gets a 20% discount then a 5% tax on the discounted price. What is the final price?

₹500 की कीमत वाले एक उत्पाद पर 20% की छूट मिलती है और फिर छूट वाली कीमत पर 5% कर लगता है। अंतिम कीमत क्या है?

INR 430

430 रुपये

INR 435

435 रुपये

INR 425

425 रुपये

INR 420

420 रुपये

Not Answered

Q.No: 2 A girl starts from her school gate and walks 10 m East, then 4 m South, then 8 m West. She then walks 2 m North, turns right and walks 6 m. After that, she turns left and walks 2 m, and finally turns left again and walks 6 m. Where is she from the school gate?

एक लड़की अपने स्कूल के गेट से चलना शुरू करती है और 10 मीटर पूर्व, फिर 4 मीटर दक्षिण, फिर 8 मीटर पश्चिम की ओर चलती है। फिर वह 2 मीटर उत्तर की ओर चलती है, दाएँ मुड़ती है और 6 मीटर चलती है। उसके बाद, वह बाएँ मुड़ती है और 2 मीटर चलती है, और अंत में फिर से बाएँ मुड़ती है और 6 मीटर चलती है। वह स्कूल के गेट से कहाँ है?

2 m East

2 मीटर पूर्व

2 m West

2 मीटर पश्चिम

4 m North

4 मीटर उत्तर

4 m South

4 मीटर दक्षिण

Q.No: 3 If $+$ = $-$, $-$ = $*$, $*$ = $/$, $/$ = $+$; then, what is $8 + (3 - 2) * 4 / 1$?

यदि $+$ = $-$, $-$ = $*$, $*$ = $/$, $/$ = $+$; तो, $8 + (3 - 2) * 4 / 1$ क्या है?

9

9

8

8

1/5

1/5

6

Q.No: 4	<p>Carefully read the following statements and conclusions. Consider the statements to be absolutely true, even if they contradict common facts. Based solely on the statements, determine which conclusion(s) logically follow.</p> <p>Statements: All flowers are plants. No plant is a stone. Some stones are heavy.</p> <p>Conclusions: (1) No flower is a stone. (2) Some plants are not heavy. (3) Some flowers are heavy. (4) Some heavy things are not plants.</p> <p>निम्नलिखित कथनों और निष्कर्षों को ध्यानपूर्वक पढ़ें। कथनों को पूर्णतः सत्य मानें, भले ही वे सामान्य तथ्यों का खंडन करते हों। केवल कथनों के आधार पर, निर्धारित करें कि कौन सा/से निष्कर्ष तार्किक रूप से अनुसरण करते हैं।</p> <p>कथन: सभी फूल पौधे हैं। कोई भी पौधा पत्थर नहीं है। कुछ पत्थर भारी हैं।</p> <p>निष्कर्ष: (1) कोई भी फूल पत्थर नहीं है। (2) कुछ पौधे भारी नहीं हैं। (3) कुछ फूल भारी हैं। (4) कुछ भारी वस्तुएँ पौधे नहीं हैं।</p>
	Only (1) and (4) follow
	केवल (1) और (4) अनुसरण करते हैं
	Only (1) follows
	केवल (1) अनुसरण करता है
	Only (1), (2), and (4) follow
	केवल (1), (2), और (4) अनुसरण करते हैं
	All (1), (2), (3), and (4) follow
	सभी (1), (2), (3), और (4) अनुसरण करते हैं
Q.No: 5	<p>In each of the following question, a pair of words (letter sequences) is given on the left-hand side of the double colon (::), which follows a certain alphabetical pattern. Identify the logic in the first pair and apply the same logic to the third word to find the correct corresponding word from the options.</p> <p>BED : EGE :: LEG : ?</p> <p>निम्नलिखित प्रत्येक प्रश्न में, दोहरे कोलन (::) के बाईं ओर शब्दों का एक युग्म (अक्षर क्रम) दिया गया है, जो एक निश्चित वर्णमाला क्रम का अनुसरण करता है। पहले युग्म में तर्क की पहचान कीजिए और विकल्पों में से सही संगत शब्द ज्ञात करने के लिए उसी तर्क को तीसरे शब्द पर लागू कीजिए।</p> <p>BED : EGE :: LEG : ?</p>
MJF	
MJF	
NIG	
NIG	
QJH	
QJH	
QJH	
Q.No: 6	<p>A word-and-number arrangement machine rearranges a given input following a specific rule in each step. The rule involves moving the alphabetically smallest word to the leftmost side and the numerically largest number to the rightmost side in each step. The process continues until all words are arranged in alphabetical order at the left end, and all numbers in descending order at the right end.</p> <p>Based on the pattern, answer the questions that follow the given input.</p> <p>Input: 100 Orbit 35 Dream 44 67 Space Apple</p> <p>Question: What will be the arrangement in Step II?</p>

एक शब्द-और-संख्या व्यवस्था मशीन प्रत्येक चरण में एक विशिष्ट नियम का पालन करते हुए दिए गए इनपुट को पुनर्व्यवस्थित करती है। इस नियम में प्रत्येक चरण में वर्णमाला के अनुसार सबसे छोटे शब्द को सबसे बाईं ओर और संख्यात्मक रूप से सबसे बड़ी संख्या को सबसे दाईं ओर ले जाना शामिल है। यह प्रक्रिया तब तक जारी रहती है जब तक कि सभी शब्द बाईं ओर वर्णमाला क्रम में और सभी संख्याएँ दाईं ओर अवरोही क्रम में व्यवस्थित न हो जाएँ। इस पैटर्न के आधार पर, दिए गए इनपुट के बाद आने वाले प्रश्नों के उत्तर दीजिए।

इनपुट: **100 ऑर्बिट 35 ड्रीम 44 67 स्पेस एप्पल**

प्रश्न: चरण II में व्यवस्था क्या होगी?

Apple Dream Orbit Space 67 100 44 35

एप्पल ड्रीम ऑर्बिट स्पेस 67 100 44 35

Apple Dream Orbit 35 44 Space 67 100

एप्पल ड्रीम ऑर्बिट 35 44 स्पेस 67 100

Apple Dream Orbit Space 44 35 67 100

एप्पल ड्रीम ऑर्बिट स्पेस 44 35 67 100

Apple Dream Orbit Space 100 67 35 44

Apple Dream Orbit Space 100 67 35 44

Q.No: 7 Ravi ranks 12^{th} from the top and 21^{st} from the bottom in a class. How many students are there in the class?

रवि एक कक्षा में ऊपर से 12^{th} रैंक पर है और नीचे से 21^{st} रैंक पर है। कक्षा में कितने छात्र हैं?

31

31

33

33

34

34

32

32

Q.No: 8 In each of the following questions, a word is transformed into another word by applying a specific alphabetical pattern to each of its letters. Identify the logic used in the first pair and apply the same logic to the second word to determine the correct answer.

BLUSH : DMQWI :: CRASH : ?

निम्नलिखित प्रत्येक प्रश्न में, एक शब्द को उसके प्रत्येक अक्षर पर एक विशिष्ट वर्णमाला पैटर्न लागू करके दूसरे शब्द में बदला गया है। पहले जोड़े में प्रयुक्त तर्क को पहचानिए और सही उत्तर निर्धारित करने के लिए उसी तर्क को दूसरे शब्द पर लागू कीजिए।

BLUSH : DMQWI :: CRASH : ?

FSSXY

FSSXY

HIITZ

HIITZ

GHHUT

GHHUT

SSWWI

SSWWI

Q.No: 9 In each of the following questions, a specific relationship is given between two words. Identify the word that shares a similar semantic relationship with the given pair. Choose the most appropriate option from the four choices given below.

Gravity : Planet :: Magnetism : ?

निम्नलिखित प्रत्येक प्रश्न में दो शब्दों के बीच एक विशिष्ट संबंध दिया गया है। उस शब्द की पहचान कीजिए जो दिए गए युग्म के साथ समान अर्थ संबंध साझा करता है। नीचे दिए गए चार विकल्पों में से सबसे उपयुक्त विकल्प चुनिए।

गुरुत्वाकर्षण : ग्रह :: चुंबकत्व : ?

Mass

द्रव्यमान

Electricity

बिजली

Meta

धातु

North Pole

उत्तरी ध्रुव

Q.No: 10	<p>You have three tasks due: A project worth 50% of your grade (due in 3 days) A team meeting (in 1 hour) An optional quiz (due tonight) What should you do first?</p> <p>आपके पास तीन कार्य हैं: आपके ग्रेड के 50% के बराबर का प्रोजेक्ट (3 दिनों में पूरा करना है) एक टीम मीटिंग (1 घंटे में) एक वैकल्पिक प्रश्नोत्तरी (आज रात को पूरा करना है) आपको सबसे पहले क्या करना चाहिए?</p>
Start the project	
प्रोजेक्ट प्रारंभ करें	
Take the optional quiz	
वैकल्पिक प्रश्नोत्तरी लें	
Attend the team meeting	
टीम मीटिंग में भाग लें	
Review all deadlines again	
सभी समय-सीमाओं की पुनः समीक्षा करें	

Q.No: 11	<p>Identify the pair of letters that will replace to form a meaningful word. ST_ _Y</p> <p>अक्षरों के उस जोड़े को पहचानें जो एक सार्थक शब्द बनाने के लिए प्रतिस्थापित होगा। ST_ _Y</p>
AI	
AI	
AR	
AR	
OR	
OR	
AL	
AL	

Q.No: 12	<p>If 6 people are seated at a round table, how many distinct seating arrangements are possible? यदि 6 व्यक्ति एक गोल मेज पर बैठे हों, तो कितनी अलग-अलग बैठने की व्यवस्था संभव है?</p>
360	
360	
720	
720	
120	
120	
240	
240	

Q.No: 13	<p>Read the situation and choose the best judgment: You are the manager of a team. Two of your teammates get into an argument in front of clients. What should you do?</p> <p>स्थिति को समझें और सर्वोत्तम निर्णय लें: आप एक टीम के मैनेजर हैं। आपके दो साथी क्लाइंट्स के सामने बहस में पड़ जाते हैं। आपको क्या करना चाहिए?</p>
Fire both of them for misconduct	
कदाचार के लिए दोनों को नौकरी से निकाल दो	
Ignore it, it's a common workplace occurrence	
इसे नज़रअंदाज़ करें, यह कार्यस्थल पर होने वाली एक सामान्य घटना है	
Immediately scold them in front of everyone	
तुरंत सबके सामने उन्हें डाँटें	
Calmly end the argument, apologize to the clients, and speak to both teammates privately	
शांतिपूर्वक बहस समाप्त करें, ग्राहकों से माफ़ी मांगें, और दोनों टीम के सदस्यों से अकेले में बात करें	

Q.No: 14	<p>In each of the following word-number pairs, the number represents the sum of the alphabetical positions of the letters in the word (A = 1, B = 2, ..., Z = 26). Four of the pairs follow this rule exactly. One does not. Identify the odd one out.</p> <p>STONE : 73 GLASS : 58 BRICK : 43 WALL : 48 CEMENT : 60</p> <p>निम्नलिखित प्रत्येक शब्द-संख्या युग्म में, संख्या शब्द के अक्षरों के वर्णानुक्रमिक स्थानों के योग को दर्शाती है (A = 1, B = 2, ..., Z = 26)। चार युग्म इस नियम का पूरी तरह पालन करते हैं। एक युग्म नहीं करता। बेमेल युग्म की पहचान कीजिए।</p> <p>STONE : 73 GLASS : 58 BRICK : 43 WALL : 48 CEMENT : 60</p>
	BRICK : 44
	BRICK : 44
	GLASS : 58
	GLASS : 58
	WALL : 48
	WALL : 48
	STONE : 73
	STONE : 73

Q.No: 15	<p>Four of the following five pairs follow a similar letter-coding pattern. Identify the one that does not belong to the group.</p> <p>CRUSH : XIFSH BLAST : YOWHG FROWN : UILRM HAPPY : SMNMB SNAIL : HNVRO</p> <p>Question: Which of the following pairs is the odd one out?</p> <p>निम्नलिखित पाँच में से चार युग्म एक समान अक्षर-कोडिंग पैटर्न का अनुसरण करते हैं। उस युग्म की पहचान कीजिए जो इस समूह से संबंधित नहीं है।</p> <p>क्रश : XIFSH ब्लास्ट : YOWHG फ्राउन : UILRM हैप्पी : SMNMB घोघा : HNVRO</p> <p>प्रश्न: निम्नलिखित में से कौन सा युग्म बेमेल है?</p>
	CRUSH : XIFSH
	CRUSH : XIFSH
	FROWN : UILRM
	FROWN : UILRM
	HAPPY : SMNMB
	HAPPY : SMNMB
	SNAIL : HNVRO
	SNAIL : HNVRO

Q.No: 16	<p>Find the next term in the given letter series: YZYWYZYZ, YZYZWYZY, YZYZYWYZ, YZYZYZWY, YZYZYZWW, ?</p> <p>दी गई अक्षर श्रृंखला में अगला पद ज्ञात कीजिए: YZYWYZYZ, YZYZWYZY, YZYZYWYZ, YZYZYZWY, YZYZYZWW, ?</p>
	YZZYWWWW
	YZZYWWWW
	WWYZYZYZW
	WWYZYZYZW
	YZZYWWWW
	YZZYWWWW
	YZYWYZYZW
	YZYWYZYZW

Q.No: 17	<p>In a certain code language: BRIGHT = HTGIRB, DARK = KRAD What is the code for LIGHT?</p> <p>यह एक विशेष कोड भाषा में दिया गया है: BRIGHT = HTGIRB, DARK = KRAD LIGHT का कोड क्या होगा?</p>
	HTGIRB
	HTGIRB
	TGHIL
	TGHIL
	TGLIH
	TGLIH
	TIGLH
	TIGLH

Q.No: 18	<p>In each question below, two pairs of letters are given. The first pair has a specific relationship between its letters. Identify the relationship and choose the correct option that completes the second pair in the same way.</p> <p>ZY : XV :: TR : ?</p> <p>नीचे दिए गए प्रत्येक प्रश्न में अक्षरों के दो युग्म दिए गए हैं। पहले युग्म के अक्षरों के बीच एक विशिष्ट संबंध है। संबंध पहचानिए और उस सही विकल्प का चयन कीजिए जो दूसरे युग्म को भी उसी प्रकार पूरा करता है।</p> <p>ZY : XV :: TR : ?</p>
	RO
	RO
	OS
	OS
	SP
	SP
	QP
	QP

Q.No: 19	<p>If the input is: apple 12 orange 7 banana 15 and the logic used is to arrange numbers in ascending order and words in alphabetical order, what would be Step 2?</p> <p>अगर इनपुट है: apple 12 orange 7 banana 15 और तर्क यह है कि संख्याओं को आरोही क्रम में तथा शब्दों को वर्णमाला क्रम में व्यवस्थित किया जाए, तो चरण 2 क्या होगा?</p>
	15 apple 7 banana 12 orange
	15 apple 7 banana 12 orange
	7 apple 12 banana 15 orange
	7 apple 12 banana 15 orange
	7 banana 12 orange 15 apple
	7 banana 12 orange 15 apple
	7 orange 12 banana 15 apple
	7 orange 12 banana 15 apple

Q.No: 20	<p>Read the situation and choose the best judgment:</p> <p>You are on a crowded public bus during peak hours. At the next stop, an elderly person using crutches boards the bus, and all the seats are occupied. People around you seem to be avoiding eye contact.</p> <p>स्थिति को समझें और सबसे अच्छा निर्णय लें:</p> <p>आप व्यस्त समय में एक भीड़-भाड़ वाली सार्वजनिक बस में हैं। अगले स्टॉप पर, बैसाखी के सहारे एक बुजुर्ग व्यक्ति बस में चढ़ता है, और सभी सीटें भरी हुई हैं। आपके आस-पास के लोग आपसे नज़रें मिलाने से बचते नज़र आते हैं।</p> <p>Call out loudly, asking if anyone is willing to give up their seat for the elderly person.</p> <p>जोर से पुकारें और पूछें कि क्या कोई बुजुर्ग व्यक्ति के लिए अपनी सीट छोड़ने को तैयार है।</p> <p>Politely offer your seat to the elderly person.</p> <p>विनम्रतापूर्वक बुजुर्ग व्यक्ति को अपनी सीट देने की पेशकश करें</p> <p>Remain in your seat, assuming someone else closer to the person will offer theirs.</p> <p>अपनी सीट पर बैठे रहें, यह मानकर कि उस व्यक्ति के निकट कोई अन्य व्यक्ति अपनी सीट दे देगा।</p> <p>Inform the bus driver that there's an elderly person standing and they should ask someone to vacate a seat.</p> <p>बस चालक को बताएं कि वहां एक बुजुर्ग व्यक्ति खड़ा है और उन्हें किसी से सीट खाली करने के लिए कहना चाहिए।</p>
----------	--

Q.No: 21	Complete the series: 10, 14, 23, 39, 64, ? श्रृंखला को पूरा करें: 10, 14, 23, 39, 64, ?
71	
71	
100	
100	
52	
52	
68	
68	

Q.No: 22	A can do a job in 12 days B in 18 days. A works for 3 days then B joins. Total days to finish? A किसी काम को 12 दिनों में और B किसी काम को 18 दिनों में पूरा कर सकता है। A, 3 दिन काम करता है, फिर B भी शामिल हो जाता है। काम पूरा करने में कुल कितने दिन लगेंगे?
8 days	
8 दिन	
11 days	
11 दिन	
12 days	
12 दिन	
10 days	
10 दिन	
Not Answered	

Q.No: 23	Read the following statement carefully and identify the conclusion that follows. Statement: "People who regularly exercise are less likely to fall ill." Conclusions: I. Regular exercise improves immunity. II. Illness is directly linked to lack of physical activity. निम्नलिखित कथन को ध्यान से पढ़ें और निष्कर्ष निकालें। कथन: "जो लोग नियमित रूप से व्यायाम करते हैं, उनके बीमार पड़ने की संभावना कम होती है।" निष्कर्ष: I. नियमित व्यायाम से रोग प्रतिरोधक क्षमता बढ़ती है। II. बीमारी का सीधा संबंध शारीरिक गतिविधि की कमी से है।
Only conclusion I follows	
केवल निष्कर्ष I अनुसरण करता है	
Only conclusion II follows	
केवल निष्कर्ष II अनुसरण करता है	
Both conclusions I and II follow	
दोनों निष्कर्ष I और II अनुसरण करते हैं	
Neither conclusion I nor II follows	
न तो निष्कर्ष I और न ही II अनुसरण करता है	

Q.No: 24	In a class of 88 students, girls are $\frac{5}{8}$ of total. Rahul is 16th from top, 12 girls ahead. Find number of boys after Rahul. 88 छात्रों की एक कक्षा में, लड़कियों की संख्या कुल का $\frac{5}{8}$ है। राहुल ऊपर से 16वें स्थान पर है, और उससे 12 लड़कियाँ आगे हैं। राहुल के बाद लड़कों की संख्या ज्ञात कीजिए।
24	
24	
29	
29	
27	
27	
25	
25	
Not Answered	

Q.No: 25	Five persons are sitting in a straight line facing north. S is second to the left of T. R is to the immediate right of T. U is not sitting at any end. Who is sitting in the middle? पाँच व्यक्ति एक सीधी रेखा में उत्तर की ओर मुँह करके बैठे हैं। S, T के बाएँ दूसरे स्थान पर है। R, T के ठीक दाएँ है। U किसी भी छोर पर नहीं बैठा है। बीच में कौन बैठा है?
S	
S	
T	
T	
R	
R	

Q.No: 26	If North becomes South-West, what will West become? यदि उत्तर दक्षिण-पश्चिम हो जाए तो पश्चिम क्या बन जाएगा?
North-West	
उत्तर-पश्चिम	
East	
पूर्व	
North-East	
उत्तर-पूर्व	
South-East	
दक्षिण-पूर्व	

Q.No: 27

Four of the following five are alike in a certain way and hence form a group. Which is the one that does not belong to that group?

A. DATE : EXWH

B. READ : SFBC

C. FISH : GJTI

D. BOOK : CPQL

E. CARD : DBSE

निम्नलिखित पाँच में से चार एक निश्चित रूप से समान हैं और इसलिए एक समूह बनाते हैं। वह कौन सा है जो उस समूह से संबंधित नहीं है?

A. दिनांक: EXWH

B. पढ़ना: SFBC

C. मछली: GJTI

D. पुस्तक: CPQL

E. कार्ड: DBSE

BOOK : CPQL

BOOK : CPQL

CARD : DBSE

CARD : DBSE

DATE : EXWH

DATE : EXWH

READ : SFBC

READ : SFBC

Q.No: 28	<p>Observe the following incomplete letter sequence carefully:</p> <p>aa_bbc_aa bb_aaac_cc.</p> <p>A specific pattern governs the order and repetition of the letters. Choose the option that best fills the blanks (in order) to complete the sequence logically and symmetrically.</p> <p>निम्नलिखित अपूर्ण अक्षर अनुक्रम को ध्यानपूर्वक देखें:</p> <p>aa_bbc_aa bb_aaac_cc.</p> <p>अक्षरों के क्रम और पुनरावृत्ति को एक विशिष्ट पैटर्न नियंत्रित करता है। अनुक्रम को तार्किक और सममित रूप से पूरा करने के लिए रिक्त स्थानों को सर्वोत्तम रूप से भरने वाले विकल्प का चयन करें।</p>
cabb	
cabb	
acbb	
acbb	

cabc
cabc
baac
baac

Q.No: 29	<p>Statement: Emotional intelligence enhances leadership, but without technical expertise, leaders may fail to meet organizational objectives. Conclusion I: Emotional intelligence alone is not enough for leadership success.</p> <p>Conclusion II: Technical expertise ensures effective leadership.</p> <p>Which conclusion follows?</p> <p>कथन: भावनात्मक बुद्धिमत्ता नेतृत्व को बढ़ाती है, लेकिन तकनीकी विशेषज्ञता के बिना, नेता संगठनात्मक उद्देश्यों को पूरा करने में विफल हो सकते हैं।</p> <p>निष्कर्ष I: नेतृत्व की सफलता के लिए केवल भावनात्मक बुद्धिमत्ता ही पर्याप्त नहीं है।</p> <p>निष्कर्ष II: तकनीकी विशेषज्ञता प्रभावी नेतृत्व सुनिश्चित करती है।</p> <p>इससे कौन सा निष्कर्ष निकलता है?</p>
	Only conclusion II follows
	केवल निष्कर्ष II अनुसरण करता है
	Only conclusion I follows
	केवल निष्कर्ष I अनुसरण करता है
	Neither conclusion I nor II follows
	न तो निष्कर्ष I और न ही II अनुसरण करता है
	Both conclusion I and II follow
	निष्कर्ष I और II दोनों अनुसरण करते हैं

Q.No: 30	<p>Observe the following incomplete letter sequence carefully. A specific pattern governs the order and repetition of the letters. Choose the option that best fills the blanks to complete the sequence logically and symmetrically.</p> <p>xy_z_y_x_yz_zyx</p> <p>निम्नलिखित अपूर्ण अक्षर अनुक्रम को ध्यानपूर्वक देखिए। अक्षरों के क्रम और पुनरावृत्ति को एक विशिष्ट पैटर्न नियंत्रित करता है। अनुक्रम को तार्किक और सममित रूप से पूरा करने के लिए रिक्त स्थानों को सर्वोत्तम रूप से भरने वाला विकल्प चुनिए।</p> <p>xy_z_y_x_yz_zyx</p>
	zzyxz
	zzyxz
	zzyyz
	zzyyz
	zxzzz
	zxzzz
	zxzyx
	zxzyx

Q.No: 31	<p>A man walks 3 km west, then turns north and walks 4 km. How far is he from the starting point?</p> <p>एक आदमी पश्चिम की ओर 3 किमी चलता है, फिर उत्तर की ओर मुड़कर 4 किमी चलता है। वह प्रारंभिक बिंदु से कितनी दूरी पर है?</p>
	6 km
	6 किमी
	7 km
	7 किमी
	4 km
	4 किमी
	5 km
	5 किमी

Q.No: 32	<p>Six friends A, B, C, D, E, and F are sitting in a row. C is sitting to the immediate right of A. D is not at any end. B is sitting between D and E. F is sitting at one of the ends. Who is sitting to the immediate left of B?</p> <p>छह मित्र A, B, C, D, E और F एक पंक्ति में बैठे हैं। C, A के ठीक दाईं ओर बैठा है। D किसी भी छोर पर नहीं है। B, D और E के बीच में बैठा है। F किसी एक छोर पर बैठा है। B के ठीक बाईं ओर कौन बैठा है?</p>
	A
	A
	F
	F

D
D
E
E

Q.No: 33	A can do a job in 10 days and B can do it in 15 days. If they work together, how long will it take them to complete the job? A किसी काम को 10 दिन में कर सकता है और B उसी काम को 15 दिन में कर सकता है। अगर वे दोनों मिलकर काम करें, तो उन्हें काम पूरा करने में कितना समय लगेगा?
5 days	
5 दिन	
6 days	
6 दिन	
8 days	
8 दिन	
9 days	
9 दिन	

Q.No: 34	In the following question, which one set of letters and numbers, when sequentially placed in the blanks of the given letter-number series, will complete it logically? u _ v _ w _ 35 x _ 40 y _ 45 z _ 50 निम्नलिखित प्रश्न में, अक्षरों और संख्याओं का कौन सा समूह, दिए गए अक्षर-संख्या श्रृंखला के रिक्त स्थानों में क्रमिक रूप से रखने पर उसे तार्किक रूप से पूरा करेगा? u _ v _ w _ 35 x _ 40 y _ 45 z _ 50
28, 45, 31, 67, 39, 89	
28, 45, 31, 67, 39, 89	
21, 22, 30, 36, 41, 45	
21, 22, 30, 36, 41, 45	
20, 25, 30, 36, 41, 46	
20, 25, 30, 36, 41, 46	
30, 67, 32, 56, 38, 45	
30, 67, 32, 56, 38, 45	

Q.No: 35	Read the following statements and conclusions carefully. Assume that the statements are absolutely true, even if they contradict common knowledge. Based only on the given information, determine which of the conclusions logically follow. Statements: All engineers are smart. Some smart people are creative. No creative person is dull. Conclusions: (1) Some smart people are not dull. (2) Some engineers are creative. (3) Some dull people are smart. (4) No engineer is dull. निम्नलिखित कथनों और निष्कर्षों को ध्यानपूर्वक पढ़ें। मान लें कि कथन पूर्णतः सत्य हैं, भले ही वे सामान्य ज्ञान के विपरीत हों। केवल दी गई जानकारी के आधार पर, निर्धारित करें कि कौन सा निष्कर्ष तार्किक रूप से अनुसरण करता है। कथन: सभी इंजीनियर बुद्धिमान होते हैं। कुछ बुद्धिमान लोग रचनात्मक होते हैं। कोई भी रचनात्मक व्यक्ति सुस्त नहीं होता। निष्कर्ष: (1) कुछ बुद्धिमान लोग सुस्त नहीं होते। (2) कुछ इंजीनियर रचनात्मक होते हैं। (3) कुछ सुस्त लोग बुद्धिमान होते हैं। (4) कोई भी इंजीनियर सुस्त नहीं होता।
Only (1) follows	
केवल (1) अनुसरण करता है	
All (1), (2), (3), and (4) follow	
सभी (1), (2), (3), और (4) अनुसरण करते हैं	

Only (1) and (2) follow

केवल (1) और (2) अनुसरण करते हैं

Only (1), (3), and (4) follow

केवल (1), (3), और (4) अनुसरण करते हैं

Q.No: 36 Introducing a boy, a girl said, "He is the son of the daughter of my father's brother." How is the boy related to the girl?

एक लड़के का परिचय देते हुए, एक लड़की ने कहा, "वह मेरे पिता के भाई की पुत्री का पुत्र है।" लड़का लड़की से किस प्रकार संबंधित है?

Brother

भाई

Nephew

भतीजा

Cousin

चचेरा

Uncle

चाचा

Q.No: 37 Neeraj is a B.Sc. graduate with 65% marks. He has completed M.Sc. but has no work experience. He is willing to undergo a probation period of one year. Age: 26 years as of 2017. What decision should be taken?

नीरज 65% अंकों के साथ बीएससी स्नातक है। उसने एमएससी पूरी कर ली है, लेकिन उसके पास कोई कार्य अनुभव नहीं है। वह एक वर्ष की परीक्षा अवधि से गुजरने को तैयार है। आयु: 2017 तक 26 वर्ष। क्या निर्णय लिया जाना चाहिए?

Select the candidate

उम्मीदवार का चयन करें

Refer to Vice Principal

उप प्राचार्य से संपर्क करें

Information inadequate

जानकारी अपर्याप्त

Refer to Principa

प्रिंसिपल से संपर्क करें

Q.No: 38 A says to B, "You are the daughter of the only son of my father." How is A related to B?

A, B से कहता है, "तुम मेरे पिता के इकलौते पुत्र की पुत्री हो।" A, B से किस प्रकार संबंधित है?

Father

पिता

Uncle

चाचा

Aunt

चाची

Mother

माँ

Q.No: 39 The sum of two consecutive odd numbers is 24. What is the larger number?

दो क्रमागत विषम संख्याओं का योग 24 है। बड़ी संख्या कौन सी है?

15

15

17

17

11

11

13

13

Q.No: 40	<p>If + means -, \div means +, - means \times, and \times means \div, then, what is $25 - 3 \div 5 + 10$?</p> <p>यदि + का अर्थ - है, \div का अर्थ + है, - का अर्थ \times है, और \times का अर्थ \div है, तो $25 - 3 \div 5 + 10$ क्या है?</p>
65	
65	
70	
70	
75	
75	
80	
80	

Q.No: 41	<p>Eight persons – A, B, C, D, E, F, G, H – are sitting around a circular table facing the center.</p> <p>C is third to the right of A.</p> <p>E is second to the left of C.</p> <p>B is opposite A.</p> <p>D is to the immediate right of B.</p> <p>G is second to the right of F, who is not an immediate neighbor of A.</p> <p>Who is sitting to the immediate left of D?</p> <p>आठ व्यक्ति - A, B, C, D, E, F, G, H - एक वृत्ताकार मेज के चारों ओर केंद्र की ओर मुख करके बैठे हैं।</p> <p>C, A के दाईं ओर तीसरा है।</p> <p>E, C के बाईं ओर दूसरा है।</p> <p>B, A के विपरीत है।</p> <p>D, B के ठीक दाईं ओर है।</p> <p>G, F के दाईं ओर दूसरा है, जो A का निकटतम पड़ोसी नहीं है।</p> <p>D के ठीक बाईं ओर कौन बैठा है?</p>
G	
G	
H	
H	
E	
E	

Q.No: 42	Identify the odd pair: विषम जोड़ी की पहचान करें:
13-17	
13-17	
24-28	
24-28	
19-23	
19-23	
29-31	
29-31	

Q.No: 43	<p>A class has 120 students. Number of boys is twice that of girls. Rohan is ranked 28th from the top. If there are 18 girls ahead of him, how many boys are behind him?</p> <p>एक कक्षा में 120 छात्र हैं। लड़कों की संख्या लड़कियों की संख्या से दोगुनी है। रोहन ऊपर से 28वें स्थान पर है। यदि उससे आगे 18 लड़कियाँ हैं, तो उसके पीछे कितने लड़के हैं?</p>
50	
50	
70	
70	
53	
53	
54	
54	

Q.No: 44	Identify the odd number: विषम संख्या पहचानें:
28	
28	
45	
45	
63	
63	
36	
36	

Q.No: 45	Fill in the blank: 2, 6, 15, 31, 56, ____ रिक्त स्थान भरें: 2, 6, 15, 31, 56, ____
92	
92	
104	
104	
100	
100	
85	
85	

Q.No: 46	<p>A word-and-number arrangement machine rearranges a given input following a specific rule in each step. The rule involves moving the alphabetically smallest word to the leftmost side and the numerically largest number to the rightmost side in each step. The process continues until all words are arranged in alphabetical order at the left end, and all numbers in descending order at the right end.</p> <p>Based on the pattern, answer the questions that follow the given input.</p> <p>Input: Shine 34 12 Gravity 91 20 Echo Bounce Mirror 73 50</p> <p>Question: Which word is placed at the 3rd position from the left in Step IV?</p> <p>एक शब्द-और-संख्या व्यवस्था मशीन प्रत्येक चरण में एक विशिष्ट नियम का पालन करते हुए दिए गए इनपुट को पुनर्व्यवस्थित करती है। इस नियम के अनुसार, प्रत्येक चरण में वर्णमाला के अनुसार सबसे छोटे शब्द को सबसे बाईं ओर और संख्यात्मक रूप से सबसे बड़ी संख्या को सबसे दाईं ओर ले जाया जाता है। यह प्रक्रिया तब तक जारी रहती है जब तक कि सभी शब्द बाईं ओर वर्णमाला क्रम में और सभी संख्याएँ दाईं ओर अवरोही क्रम में व्यवस्थित न हो जाएँ। इस पैटर्न के आधार पर, दिए गए इनपुट के बाद दिए गए प्रश्नों के उत्तर दीजिए।</p> <p>इनपुट: चमक 34 12 गुरुत्वाकर्षण 91 20 गूँज उछलना आईना 73 50</p> <p>प्रश्न: चरण IV में बाईं ओर से तीसरे स्थान पर कौन सा शब्द रखा गया है?</p>
Echo	
गूँज	
Gravity	
गुरुत्वाकर्षण	
Mirror	
आईना	
Bounce	
उछलना	

Q.No: 47	<p>In each of the following questions, two numbers are given which follow a certain logical or arithmetic relationship. Identify the same pattern and apply it to find the missing number in the second pair. Choose the correct option from the given alternatives.</p> <p>40321 : 62543 :: 56120 : ?</p> <p>निम्नलिखित प्रत्येक प्रश्न में दो संख्याएँ दी गई हैं जो एक निश्चित तार्किक या अंकगणितीय संबंध का पालन करती हैं। समान पैटर्न की पहचान कीजिए और दूसरे जोड़े में लुप्त संख्या ज्ञात करने के लिए उसका प्रयोग कीजिए। दिए गए विकल्पों में से सही विकल्प चुनिए।</p> <p>40321 : 62543 :: 56120 : ?</p>
67342	
67342	
78342	
78342	
78343	
78343	

78331

78331

Q.No: 48 Complete the series: **0, 1, 1, 2, 3, 5, 8, ?**

श्रृंखला को पूरा करें: 0, 1, 1, 2, 3, 5, 8, ?

12

12

13

13

15

15

11

11

Q.No: 49 Select the correct option that will complete the series.

(3, 10), (5, 28), (7, 54), ?, (13, 178)

वह सही विकल्प चुनिए जो श्रृंखला को पूरा करेगा।

(3, 10), (5, 28), (7, 54), ?, (13, 178)

(8,72)

(8,72)

(10, 95)

(10, 95)

(9, 81)

(9, 81)

(11, 126)

(11, 126)

Q.No: 50 Find the odd one out:

विषम चुनें:

231

231

123

123

312

312

124

124

PART - B (General Awareness)

Q.No: 51 What is the main focus of the Beti Bachao Beti Padhao (BBBP) scheme launched in 2015?

2015 में शुरू की गई बेटी बचाओ बेटी पढ़ाओ (बीबीबीपी) योजना का मुख्य फोकस क्या है?

Housing for women

महिलाओं के लिए आवास

Financial inclusion for widows

विधवाओं के लिए वित्तीय समावेशन

Girl child survival & education

बालिकाओं का जीवन-यापन एवं शिक्षा

Promoting rural entrepreneurship

ग्रामीण उद्यमिता को बढ़ावा देना

Q.No: 52	Which of the following simple household methods can detect the presence of chalk powder in adulterated wheat flour? निम्नलिखित में से कौन सी सरल घरेलू विधि मिलावटी गेहूँ के आटे में चाक पाउडर की उपस्थिति का पता लगा सकती है?
	Mixing with vinegar to observe fizzing reaction फ़िज़िंग प्रतिक्रिया देखने के लिए सिरके के साथ मिलाना
	Adding iodine solution to observe color change रंग परिवर्तन देखने के लिए आयोडीन घोल मिलाना
	Heating over flame to detect odor गंध का पता लगाने के लिए आग पर गर्म करना
	Soaking in alcohol to dissolve the chalk चाक को घोलने के लिए अल्कोहल में भिगोना

Q.No: 53	Consider the following characteristics: 1. High moisture-retaining capacity, often developing deep cracks during dry hot weather. 2. Ideal for tea and apple cultivation due to high fertility and cold climate preference. 3. Rich in lime, iron, magnesia, and alumina, but poor in phosphoric contents. Which of the above characteristics are primarily associated with Black Soils? निम्नलिखित विशेषताओं पर विचार करें: 1. उच्च नमी धारण क्षमता, शुष्क और गर्म मौसम में अक्सर गहरी दरारें पड़ जाती हैं। 2. उच्च उर्वरता और ठंडी जलवायु के कारण चाय और सेब की खेती के लिए आदर्श। 3. चूना, लोहा, मैग्नीशिया और एल्यूमिना से भरपूर, लेकिन फॉस्फोरिक तत्वों की कमी। उपरोक्त में से कौन सी विशेषताएँ मुख्य रूप से काली मिट्टी से जुड़ी हैं?
	Only 1 केवल 1
	Only 1 and 3 केवल 1 और 3
	Only 2 and 3 केवल 2 और 3
	1, 2 and 3 are correct 1, 2 और 3 सही हैं

Q.No: 54	Consider the following statements: Statement I: The Industrial Policy Resolution of 1956 aimed to promote private sector dominance in all key industries. Statement II: The Industrial Policy Resolution 1956 classified industries into three categories: fully government-owned, mixed sector with government lead, and private sector. Which of the above statements is/are correct? निम्नलिखित कथनों पर विचार करें: कथन I: 1956 के औद्योगिक नीति संकल्प का उद्देश्य सभी प्रमुख उद्योगों में निजी क्षेत्र के प्रभुत्व को बढ़ावा देना था। कथन II: औद्योगिक नीति संकल्प 1956 ने उद्योगों को तीन श्रेणियों में वर्गीकृत किया: पूरी तरह से सरकारी स्वामित्व वाला, सरकारी नेतृत्व वाला मिश्रित क्षेत्र और निजी क्षेत्र। उपरोक्त कथनों में से कौन सा/से सही है/हैं?
	Both statements I and II are incorrect कथन I और II दोनों गलत हैं
	Statement I is incorrect, Statement II is correct कथन I गलत है, कथन II सही है
	Statement I is correct, Statement II is incorrect कथन I सही है, कथन II गलत है
	Both statements I and II are correct कथन I और II दोनों सही हैं

Q.No: 55	Under Chapter V of the <i>Bharatiya Sakshya Adhiniyam, 2023</i> , which of the following qualifies as primary evidence ? भारतीय साक्ष्य अधिनियम, 2023 के अध्याय V के अंतर्गत निम्नलिखित में से कौन प्राथमिक साक्ष्य के रूप में योग्य है?
	A counterpart document executed by one of the parties किसी एक पक्ष द्वारा निष्पादित प्रतिरूप दस्तावेज़
	A photocopy of the document signed by a clerk

क्लर्क द्वारा हस्ताक्षरित दस्तावेज़ की एक फोटोकॉपी

A handwritten summary prepared later

बाद में तैयार किया गया एक हस्तलिखित सारांश

A typed copy of the original document

मूल दस्तावेज़ की टाइप की गई प्रति

Not Answered

Q.No: 56 Which Chola ruler is credited with the construction of irrigation systems to support agriculture?

वह चोल शासक कौन था जिसने कृषि को बढ़ावा देने हेतु सिंचाई प्रणालियों का निर्माण करवाया?

Raja Raja Chola I

राजा राजा चोल प्रथम

Rajendra Chola

राजेन्द्र चोल प्रथम

Kulottunga Chola I

कुलोचुंग चोल प्रथम

Aditya Chola I

आदित्य चोल प्रथम

Q.No: 57 Who was the first Indian to receive the Nobel Prize in Literature for Geetanjali?

गीतांजलि के लिए साहित्य में नोबेल पुरस्कार प्राप्त करने वाले पहले भारतीय कौन थे?

Salman Rushdie

सलमान रुश्दी

Rabindranath Tagore

रवीन्द्रनाथ टैगोर

Arundhati Roy

अरुंधति रॉय

R. K. Narayan

आर. के. नारायण

Q.No: 58 Consider the following statements:

1. Ramjets operate efficiently at hypersonic speeds.
 2. Dual Mode Ramjets can work in both subsonic and supersonic modes.
- Which of the statements given above is/are correct?

निम्नलिखित कथनों पर विचार करें:

1. रैमजेट हाइपरसोनिक गति पर कुशलतापूर्वक काम करते हैं।
 2. डुअल मोड रैमजेट सबसोनिक और सुपरसोनिक दोनों मोड में काम कर सकते हैं।
- ऊपर दिए गए कथनों में से कौन सा सही है/हैं?

2 only

2 केवल

Neither 1 nor 2

न तो 1, न ही 2

Both 1 and 2

1 और 2 दोनों

1 only

1 केवल

Not Answered

Q.No: 59 In collaboration with which country is ISRO developing the Trishna satellite for high-resolution thermal infrared imaging of Earth?

इसरो किस देश के सहयोग से पृथ्वी की उच्च-रिज़ॉल्यूशन थर्मल इन्फ्रारेड इमेजिंग के लिए तृष्णा उपग्रह विकसित कर रहा है?

Israel

इज़राइल

USA

यूएसए

France

फ्रांस

UAE

संयुक्त अरब अमीरात

Q.No: 60 What is the radius of the striking or shooting circle in hockey?.

हॉकी में स्ट्राइकिंग या शूटिंग सर्कल की त्रिज्या क्या है?

16.78 meters

16.78 मीटर

13.2 meters

13.2 मीटर

14.63 meters

14.63 मीटर

6.475 meters

6.475 मीटर

Not Answered

Q.No: 61 Why does a skilled cricketer move his hands backwards while catching a fast-moving ball?

एक कुशल क्रिकेटर तेज गति से आती गेंद को पकड़ते समय अपने हाथों को पीछे की ओर क्यों ले जाता है?

To apply a greater opposing force on the ball for a quick stop.

गेंद को शीघ्र रोकने के लिए उस पर अधिक बल लगाना।

To reduce the force by increasing the time over which momentum changes.

संवेग में परिवर्तन के समय को बढ़ाकर बल को कम करना।

To increase the speed of the ball during impact.

प्रभाव के दौरान गेंद की गति बढ़ाने के लिए।

To decrease the weight of the ball using gravity.

गुरुत्वाकर्षण का उपयोग करके गेंद का वजन कम करना।

Q.No: 62 Given below are assertion and reason, read the statements and choose the correct option.

Assertion: The Treaty of Paris (1763) limited French settlements in India to trading posts only.

Reason: The French could no longer station troops or fortify their factories after the treaty.

नीचे कथन और कारण दिए गए हैं, कथनों को पढ़ें और सही विकल्प चुनें।

कथन: पेरिस की संधि (1763) ने भारत में फ्रांसीसी बस्तियों को केवल व्यापारिक चौकियों तक सीमित कर दिया।

कारण: संधि के बाद फ्रांसीसी अब सेना नहीं तैनात कर सकते थे या अपने कारखानों को मजबूत नहीं कर सकते थे।

Both Assertion (A) and Reason (R) are true, and R is not the correct explanation of A.

अभिकथन (A) और कारण (R) दोनों सत्य हैं, तथा R, A का सही स्पष्टीकरण नहीं है।

Both Assertion (A) and Reason (R) are true, and R is the correct explanation of A.

अभिकथन (A) और कारण (R) दोनों सत्य हैं, तथा R, A का सही स्पष्टीकरण है।

A is true, but R is false.

A सत्य है, लेकिन R असत्य है।

A is false, but R is true.

A असत्य है, लेकिन R सत्य है।

Q.No: 63 Which body has the power to amend the Union and State power distribution under the Indian Constitution?

भारतीय संविधान के अंतर्गत केंद्र और राज्यों के बीच शक्तियों के वितरण में संशोधन करने का अधिकार किस संस्था को प्राप्त है?

Supreme Court

सुप्रीम कोर्ट

Lok Sabha

लोकसभा

State Legislature

राज्य विधानमंडल

Q.No: 64	<p>Consider the following statements:</p> <ol style="list-style-type: none"> 1. All-India Services common to Union & states. 2. Controlled by state governments only. <p>Which of the above statements is/are true?</p> <p>निम्नलिखित कथनों पर विचार कीजिए:</p> <ol style="list-style-type: none"> 1. अखिल भारतीय सेवाएँ संघ और राज्यों के लिए समान हैं। 2. केवल राज्य सरकारों द्वारा नियंत्रित। <p>उपर्युक्त कथनों में से कौन सा/से सत्य है/हैं?</p>
Both 1 and 2	
1 और 2 दोनों	
Only 2	
केवल 2	
Neither 1 nor 2	
न तो 1 और न ही 2	
Only 1	
केवल 1	

Q.No: 65	<p>What is the role of the finance minister under the FRBM Act?</p> <p>FRBM अधिनियम के अंतर्गत वित्त मंत्री की भूमिका क्या होती है?</p>
To regulate the stock market	
शेयर बाजार को विनियमित करना	
To oversee disinvestment strategies	
विनिवेश रणनीतियों की निगरानी करना	
To manage foreign trade policies	
विदेशी व्यापार नीतियों का संचालन	
To present fiscal policy statements to Parliament	
संसद में राजकोषीय नीति वक्तव्य प्रस्तुत करना	
Not Answered	

Q.No: 66	<p>What strategic rationale drives India's investment in Iran's Chabahar Port?</p> <p>ईरान के चाबहार बंदरगाह में भारत के निवेश के पीछे क्या रणनीतिक तर्क है?</p>
To reach Afghanistan and Central Asia bypassing Pakistan	
पाकिस्तान को दरकिनार कर अफगानिस्तान और मध्य एशिया तक पहुंचना	
To monitor US naval operations	
अमेरिकी नौसैनिक अभियानों की निगरानी के लिए	
To build naval bases in Iran	
ईरान में नौसैनिक अड्डे बनाने के लिए	
To import natural gas from Saudi Arabia	
सऊदी अरब से प्राकृतिक गैस आयात करने के लिए	

Q.No: 67	<p>Which of the following statements is/are correct regarding the regional features of Gujarat's medieval architecture?</p> <ol style="list-style-type: none"> 1. Architectural forms in Gujarat often incorporated elements from local temple traditions. 2. Structures such as mosques and tombs in Gujarat featured ornamental carvings like toranas and bell motifs. 3. Gujarat's architectural style strictly avoided any decorative influence from indigenous practices. <p>गुजरात की मध्यकालीन वास्तुकला की क्षेत्रीय विशेषताओं के संबंध में निम्नलिखित में से कौन सा/से कथन सही है/हैं?</p> <ol style="list-style-type: none"> 1. गुजरात के स्थापत्य रूपों में अक्सर स्थानीय मंदिर परंपराओं के तत्व शामिल होते थे। 2. गुजरात में मस्जिदों और मकबरों जैसी संरचनाओं में तोरण और घंटी जैसी सजावटी नक्काशी होती थी। 3. गुजरात की स्थापत्य शैली में स्वदेशी प्रथाओं के किसी भी सजावटी प्रभाव का सख्ती से परहेज किया गया था।
Only 1	
केवल 1	

2 and 3 Only

केवल 2 और 3

All 1, 2, and 3 are correct

सभी 1, 2 और 3 सही हैं

1 and 2 Only

केवल 1 और 2

Not Answered

Q.No: 68 Which of the following statements best captures the essence of Malthus' theory as outlined in the passage?

निम्नलिखित में से कौन सा कथन गद्यांश में उल्लिखित माल्थस के सिद्धांत के सार को सबसे अच्छी तरह से दर्शाता है?

The natural imbalance between food supply and population growth leads to unavoidable hardships unless population is controlled.

जब तक जनसंख्या पर नियंत्रण नहीं किया जाता, खाद्य आपूर्ति और जनसंख्या वृद्धि के बीच प्राकृतिक असंतुलन अपरिहार्य कठिनाइयों को जन्म देता है।

Voluntary checks on population are more effective than natural calamities in curbing overpopulation.

जनसंख्या पर स्वेच्छिक नियंत्रण, प्राकृतिक आपदाओं की तुलना में अधिक प्रभावी है।

Population grows in arithmetic progression, while food production grows geometrically.

जनसंख्या अंकगणितीय क्रम में बढ़ती है, जबकि खाद्यान्न उत्पादन ज्यामितीय क्रम में बढ़ता है।

Agricultural production can grow faster than population with technological advancement.

तकनीकी उन्नति के साथ कृषि उत्पादन जनसंख्या की तुलना में अधिक तेजी से बढ़ सकता है।

Q.No: 69 Read the following statements:

Statement 1: The temperature in Troposphere decreases at the rate of 1°C for every 165 meters of height.

Statement 2: The temperature in mesosphere starts to decrease with the increase in altitude and reaches up to -100°C at around 80 km.

Which of the following statements is/are correct?

निम्नलिखित कथनों को पढ़ें:

कथन 1: क्षोभमंडल में तापमान प्रत्येक 165 मीटर की ऊँचाई पर 1°C की दर से घटता है।

कथन 2: मध्यमंडल में तापमान ऊँचाई बढ़ने के साथ घटने लगता है और लगभग 80 किमी पर -100°C तक पहुँच जाता है। निम्नलिखित में से कौन सा कथन सही है/हैं?

Only Statement 1 is correct

केवल कथन 1 सही है

Only Statement 2 is correct

केवल कथन 2 सही है

Both statements 1 and 2 are correct

कथन 1 और 2 दोनों सही हैं

Both statements 1 and 2 are incorrect

कथन 1 और 2 दोनों गलत हैं

Q.No: 70 Given below are assertion and reason, read the statements and choose the correct option.

Assertion: British capital accumulation in the 18th century was reinvested in industrial development.

Reason: The capital was largely controlled by merchants and industrialists instead of the feudal aristocracy.

नीचे कथन और कारण दिए गए हैं, कथनों को पढ़ें और सही विकल्प चुनें।

कथन: 18वीं शताब्दी में ब्रिटिश पूंजी संचय को औद्योगिक विकास में पुनर्निवेशित किया गया था।

कारण: पूंजी पर सामंती अभिजात वर्ग के बजाय व्यापारियों और उद्योगपतियों का नियंत्रण था।

A is true, but R is false.

A सत्य है, लेकिन R असत्य है।

Both Assertion (A) and Reason (R) are true, and R is not the correct explanation of A.

अभिकथन (A) और कारण (R) दोनों सत्य हैं, तथा R, A का सही स्पष्टीकरण नहीं है।

Both Assertion (A) and Reason (R) are true, and R is the correct explanation of A.

अभिकथन (A) और कारण (R) दोनों सत्य हैं, तथा R, A का सही स्पष्टीकरण है।

A is false, but R is true.

A असत्य है, लेकिन R सत्य है।

Q.No: 71	Who among the following is the final interpreter of the Indian Constitution? निम्नलिखित में से भारतीय संविधान का अंतिम व्याख्याता कौन है?
	The President of India भारत के राष्ट्रपति
	The Prime Minister प्रधानमंत्री
	The Supreme Court of India भारत का सुप्रीम कोर्ट
	The Parliament संसद

Q.No: 72	Which of the following accurately describes the statutory responsibilities of the Lokpal under the Lokpal and Lokayuktas Act, 2013? निम्नलिखित में से कौन सा कथन लोकपाल और लोकायुक्त अधिनियम, 2013 के तहत लोकपाल की वैधानिक जिम्मेदारियों का सटीक वर्णन करता है?
	The Lokpal is mandated to provide the President with an annual report, which will be laid before both Houses of Parliament. लोकपाल को राष्ट्रपति को वार्षिक रिपोर्ट उपलब्ध कराने का दायित्व सौंपा गया है, जिसे संसद के दोनों सदनों के समक्ष रखा जाएगा।
	The Lokpal operates under the direct administrative control of the Prime Minister's Office. लोकपाल प्रधानमंत्री कार्यालय के प्रत्यक्ष प्रशासनिक नियंत्रण में कार्य करता है।
	The Lokpal must submit regular reports to the Election Commission for public disclosure. लोकपाल को सार्वजनिक प्रकटीकरण के लिए चुनाव आयोग को नियमित रिपोर्ट प्रस्तुत करनी होगी।
	The Lokpal is a constitutional body tasked with making final judgments in corruption cases लोकपाल एक संवैधानिक निकाय है जिसका काम भ्रष्टाचार के मामलों में अंतिम निर्णय लेना है
	Not Answered

Q.No: 73	Which of the following methods was used by the villagers during the Chipko Movement? चिपको आंदोलन के दौरान गांव वालों ने कौन सा तरीका अपनाया था?
	Violent protests हिंसक विरोध
	Hugging trees to prevent cutting पेड़ों को गले लगाना, काटने से बचाने के लिए
	Filing lawsuits against companies कंपनियों के खिलाफ मुकदमे दायर करना
	Burning forest areas जलती हुई वन क्षेत्र

Q.No: 74	An electric kettle is rated 2.2 kW, 220V. If the cost of electricity is ₹4 per unit (kWh), what is the cost of boiling water for 30 minutes? एक इलेक्ट्रिक केतली की रेटिंग 2.2kW, 220V है। यदि बिजली की लागत ₹4 प्रति यूनिट (kWh) है, तो 30 मिनट तक पानी उबालने की लागत क्या है?
	₹1.1
	₹1.1
	₹2.2
	₹2.2
	₹8.8
	₹8.8
	₹4.4
	₹4.4
	Not Answered

Q.No: 75	The highest rainfall in India gets recorded in the Khasi and Jaintia Hills. In which state will you find these hills? भारत में सर्वाधिक वर्षा खासी और जयंतिया पहाड़ियों में दर्ज की जाती है। ये पहाड़ियाँ किस राज्य में स्थित हैं?
	Meghalaya मेघालय

Nagaland
नगालैंड
Arunachal Pradesh
अरुणाचल प्रदेश
Assam
असम

Q.No: 76	Under the Bharatiya Nyaya Sanhita, what is the punishment for mob lynching? भारतीय न्याय संहिता के तहत भीड़ द्वारा हत्या की सजा क्या है?
House arrest	
घर में नजरबंदी	
Fine only	
केवल जुर्माना	
Life imprisonment or death penalty	
आजीवन कारावास या मृत्युदंड	
No punishment	
कोई सजा नहीं	

Q.No: 77	In a two-sector economy, households provide factors of production to firms and receive income. If households save part of this income, what is affected? द्वि-क्षेत्रीय अर्थव्यवस्था में, परिवार फर्मों को उत्पादन के साधन प्रदान करते हैं और आय प्राप्त करते हैं। यदि परिवार इस आय का कुछ भाग बचाते हैं, तो क्या प्रभावित होता है?
The circular flow becomes a leakage	
वृत्ताकार प्रवाह रिसाव बन जाता है	
Firm profits increase automatically	
फर्म का मुनाफा स्वतः बढ़ जाता है	
It leads to inflation	
इससे मुद्रास्फीति बढ़ती है	
Production output remains constant	
उत्पादन आउटपुट स्थिर रहता है	

Q.No: 78	Which of the following statements regarding the Square Kilometer Array (SKA) is correct? स्क्वायर किलोमीटर ऐरे (SKA) के संबंध में निम्नलिखित में से कौन सा कथन सही है?
It is managed entirely by the European Space Agency.	
इसका प्रबंधन पूर्णतः यूरोपीय अंतरिक्ष एजेंसी द्वारा किया जाता है।	
It aims to explore cosmic magnetism and dark matter.	
इसका उद्देश्य ब्रह्मांडीय चुंबकत्व और डार्क मैटर का अन्वेषण करना है।	
It focuses solely on detecting visible light.	
यह केवल दृश्य प्रकाश का पता लगाने पर ही केंद्रित है।	
It will consist of a single telescope in India.	
इसमें भारत में एक ही दूरबीन शामिल होगी।	
Not Answered	

Q.No: 79	What does a high rank in the Henley Passport Index indicate? हेनले पासपोर्ट सूचकांक में उच्च रैंक क्या दर्शाता है?
High economic power	
उच्च आर्थिक शक्ति	
Strong military alliances provided to citizens	
नागरिकों को मजबूत सैन्य गठबंधन प्रदान किया गया	
Greater visa-free or visa-on-arrival access for citizens	
नागरिकों के लिए अधिक वीज़ा-मुक्त या आगमन पर वीज़ा की सुविधा	

Q.No: 80 Consider the following statements:
Statement I: The objective of "Growth with Social Justice & Equality" was introduced in the 10th Five-Year Plan.
Statement II: The first Five-Year Plan was based on the "Harrod-Domar model".
 Which of the above statements is/are correct?

निम्नलिखित कथनों पर विचार करें:

कथन I: "सामाजिक न्याय और समानता के साथ विकास" का उद्देश्य 10वीं पंचवर्षीय योजना में पेश किया गया था।

कथन II: पहली पंचवर्षीय योजना "हैरोड-डोमर मॉडल" पर आधारित थी।

उपर्युक्त कथनों में से कौन सा/से सही है/हैं?

Statement I is incorrect, Statement II is correct

कथन I गलत है, कथन II सही है

Both statements I and II are correct

कथन I और II दोनों सही हैं

Both statements I and II are incorrect

कथन I और II दोनों गलत हैं

Statement I is correct, Statement II is incorrect

कथन I सही है, कथन II गलत है

Q.No: 81 What role did the WTO membership (1995) play in India's post-reform globalization strategy?

भारत की सुधारोत्तर वैश्वीकरण रणनीति में विश्व व्यापार संगठन की सदस्यता (1995) की क्या भूमिका थी?

Strengthened balance of payments

भुगतान संतुलन को मजबूत किया

Deepened India's integration into global trade

वैश्विक व्यापार में भारत का एकीकरण गहरा हुआ

Abolished domestic subsidies completely

घरेलू सब्सिडी पूरी तरह समाप्त कर दी गई

Encouraged protective tariffs

सुरक्षात्मक टैरिफ को प्रोत्साहित किया गया

Q.No: 82 Which curve is typically U-shaped due to the law of variable proportions?

परिवर्तनशील अनुपात के नियम के कारण कौन सा वक्र सामान्यतः U आकार का होता है?

Average Fixed Cost Curve

औसत निश्चित लागत वक्र

Average Variable Cost Curve

औसत परिवर्तनीय लागत वक्र

Total Fixed Cost Curve

कुल निश्चित लागत वक्र

Marginal Revenue Curve

सीमांत राजस्व वक्र

Not Answered

Q.No: 83 Which Mughal emperor did Maharana Pratap face in the Battle of Haldighati?

हल्दीघाटी के युद्ध में महाराणा प्रताप ने किस मुगल सम्राट का सामना किया था?

Akbar

अकबर

Babur

बाबर

Aurangzeb

औरंगज़ेब

Jahangir

- Q.No: 84 Which of the following is **true** about the Gudi Padwa festival?
1. It marks the beginning of the Hindu New Year based on the lunisolar calendar.
 2. The term Gudi refers to a sacred scripture recited on this day.
 3. Traditionally, celebrations begin with the consumption of sweets for good luck.

गुड़ी पड़वा त्योहार के बारे में निम्नलिखित में से कौन सा कथन **सत्य** है?

1. यह चंद्र-सौर कैलेंडर पर आधारित हिंदू नव वर्ष की शुरुआत का प्रतीक है।
2. गुड़ी शब्द इस दिन पढ़े जाने वाले एक पवित्र ग्रंथ को संदर्भित करता है।
3. परंपरागत रूप से, इस उत्सव की शुरुआत सौभाग्य के लिए मिठाई खाने से होती है।

1, 2 and 3 all are correct

1, 2 और 3 सभी सही हैं

2 and 3 only

केवल 2 और 3

1 and 3 only

केवल 1 और 3

Only 1

केवल 1

- Q.No: 85 Identify the **correct** pairing between a plant hormone and its primary physiological function:

पादप हार्मोन और उसके प्राथमिक शारीरिक कार्य के बीच **सही** युग्मन की पहचान करें:

Gibberellin - Stimulating cell division in roots

जिबरेलिन - जड़ों में कोशिका विभाजन को उत्तेजित करता है

Ethylene - Ripening of fruits

एथिलीन - फलों का पकना

Cytokinin - Initiating abscission of leaves

साइटोकाइनिन - पत्तियों के विच्छेदन की शुरुआत

Auxin - Promoting seed dormancy

ऑक्सिन - बीज प्रसुप्ति को बढ़ावा देना

- Q.No: 86 Which dance form is traditionally associated with the culture of Punjab?

कौन-सा नृत्य पंजाब की पारंपरिक सांस्कृतिक विरासत से जुड़ा है?

Kuchipudi

कुचिपुड़ी

Yakshagana

यक्षगान

Bhangra

भांगड़ा

Mohiniyattam

Mohiniyattam

- Q.No: 87 Consider the following statements about the Trinity of Carnatic Music and choose the correct option:

Statement 1: Tyagaraja, Muthuswami Dikshitar, and Shyama Shastri lived during the 17th century.

Statement 2: The trinity elevated the kriti form to its highest artistic expression.

कर्नाटक संगीत की त्रिमूर्ति के बारे में निम्नलिखित कथनों पर विचार कीजिए और सही विकल्प चुनिए:

कथन 1: त्यागराज, मुथुस्वामी दीक्षितार और श्यामा शास्त्री 17वीं शताब्दी में हुए थे।

कथन 2: त्रिमूर्ति ने कृति रूप को उसकी सर्वोच्च कलात्मक अभिव्यक्ति तक पहुँचाया।

Both 1 and 2 are correct

1 और 2 दोनों सही हैं

Only 2

केवल 2

Neither 1 nor 2 is correct

न तो 1 और न ही 2 सही है

Only 1

केवल 1

Q.No: 88 Shobhana Ranade's legacy as a Gandhian is most closely aligned with which contemporary governance initiative?

एक गांधीवादी के रूप में शोभना रानाडे की विरासत किस समकालीन शासन पहल के साथ सबसे अधिक निकटता से जुड़ी हुई है?

Startup India

स्टार्टअप इंडिया

National Education Policy 2020

राष्ट्रीय शिक्षा नीति 2020

Gaganyaan Mission

गगनयान मिशन

Swachh Bharat Abhiyan

स्वच्छ भारत अभियान

Q.No: 89 Prime Minister Narendra Modi paid tribute to Mahatma Jyotiba Phule on his birth anniversary. Phule is best known for his contributions to which of the following?

प्रधानमंत्री नरेंद्र मोदी ने महात्मा ज्योतिबा फुले को उनकी जयंती पर श्रद्धांजलि अर्पित की। फुले को निम्नलिखित में से किसमें उनके योगदान के लिए जाना जाता है?

Agriculture and commerce

कृषि और वाणिज्य

Industry and infrastructure

उद्योग और बुनियादी ढाँचा

Military and diplomacy

सैन्य और कूटनीति

Social Reform and Anti-Caste Movement

सामाजिक सुधार और जाति-विरोधी आंदोलन

Q.No: 90 Which Maratha ruler founded the Maratha Empire in 1674, proclaiming himself Chhatrapati?

किस मराठा शासक ने 1674 में स्वयं को छत्रपति घोषित करते हुए मराठा साम्राज्य की स्थापना की थी?

Sambhaji

संभाजी

Shahu

शाहू

Shivaji

शिवाजी

Bajirao I

बाजीराव प्रथम

Q.No: 91 Name the major coal producing region located in Telangana state?

तेलंगाना राज्य में स्थित प्रमुख कोयला उत्पादक क्षेत्र का नाम बताइए।

Singareni Coalfield

सिंगरेनी कोयला क्षेत्र

Raniganj Coalfield

रानीगंज कोयला क्षेत्र

Talcher Coalfield

तालचेर कोयला क्षेत्र

Jharia Coalfield

झरिया कोयला क्षेत्र

Q.No: 92	Which of the following statements is correct in the context of constitutional interpretation and judicial doctrine? संवैधानिक व्याख्या और न्यायिक सिद्धांत के संदर्भ में निम्नलिखित में से कौन सा कथन सही है?
The Constitution of India clearly defines the term "basic structure" under Article 368. भारतीय संविधान के अनुच्छेद 368 के अंतर्गत "मूल संरचना" शब्द को स्पष्ट रूप से परिभाषित किया गया है।	
The Judiciary rejected the idea of spirit-based interpretation and strictly follows the written text. न्यायपालिका ने आत्मा-आधारित व्याख्या के विचार को अस्वीकार कर दिया और लिखित पाठ का सख्ती से पालन किया।	
The "basic structure" doctrine was brought into existence by the Supreme Court to protect the fundamental features of the Constitution. संविधान की मौलिक विशेषताओं की रक्षा के लिए सर्वोच्च न्यायालय द्वारा "मूल संरचना" सिद्धांत अस्तित्व में लाया गया था।	
The Parliament can propose amendments that repeal judicial principles without limitation. संसद बिना किसी सीमा के न्यायिक सिद्धांतों को निरस्त करने वाले संशोधन प्रस्तावित कर सकती है।	

Q.No: 93	The India-Middle East-Europe Economic Corridor (IMEC) is often viewed as a strategic counter-initiative to which other major global connectivity projects? भारत-मध्य पूर्व-यूरोप आर्थिक कॉरिडोर (आईएमईसी) को अक्सर किन अन्य प्रमुख वैश्विक कनेक्टिविटी परियोजनाओं के प्रति रणनीतिक प्रति-पहल के रूप में देखा जाता है?
Trans-Pacific Partnership (TPP) ट्रांस-पैसिफिक पार्टनरशिप (टीपीपी)	
Asia-Africa Growth Corridor (AAGC) एशिया-अफ्रीका ग्रोथ कॉरिडोर (एएजीसी)	
Belt and Road Initiative (BRI) बेल्ट एंड रोड इनिशिएटिव (बीआरआई)	
North American Free Trade Agreement (NAFTA) उत्तर अमेरिकी मुक्त व्यापार समझौता (एनएफटीए)	
Not Answered	

Q.No: 94	Which of the following statements is/are true regarding India's rural and urban population trends from 1901 to 2011? (1) The rural population has consistently increased in absolute numbers. (2) The percentage share of rural population in total population has steadily declined. (3) Urban population first exceeded 100 million in 1981. 1901 से 2011 तक भारत की ग्रामीण और शहरी जनसंख्या प्रवृत्तियों के संबंध में निम्नलिखित में से कौन सा कथन सत्य है/हैं? (1) ग्रामीण जनसंख्या में निरपेक्ष संख्या में लगातार वृद्धि हुई है। (2) कुल जनसंख्या में ग्रामीण जनसंख्या का प्रतिशत हिस्सा लगातार कम हुआ है। (3) शहरी जनसंख्या पहली बार 1981 में 100 मिलियन से अधिक हुई थी।
Only 1 and 2 केवल 1 और 2	
All of the above ऊपर के सभी	
Only 1 and 3 केवल 1 और 3	
Only 2 and 3 केवल 2 और 3	

Q.No: 95	Where was the Khelo India University Games 2024 held? खेलो इंडिया यूनिवर्सिटी गेम्स 2024 कहाँ आयोजित किया गया था?
Mumbai, Maharashtra मुंबई, महाराष्ट्र	
Bhubaneswar, Odisha भुवनेश्वर, ओडिशा	
Guwahati, Assam गुवाहाटी, असम	

- Q.No: 96 Which of the following **correctly** describes **Mission Shakti**?
1. It is an integrated women empowerment programme launched in 2022.
 2. It is run by the Ministry of Women and Child Development.
 3. The scheme includes Samarthya and Sambal sub-schemes.

निम्नलिखित में से कौन सा शब्द **मिशन शक्ति** का **सही** वर्णन करता है?

1. यह 2022 में शुरू किया गया एक एकीकृत महिला सशक्तिकरण कार्यक्रम है।
2. यह महिला एवं बाल विकास मंत्रालय द्वारा संचालित है।
3. इस योजना में सामर्थ्य और संबल उप-योजनाएँ शामिल हैं।

All 1, 2 and 3 are correct

सभी 1, 2 और 3 सही हैं

Only 1 and 3 are correct

केवल 1 और 3 सही हैं

Only 2 and 3 are correct

केवल 2 और 3 सही हैं

Only 1 and 2 are correct

केवल 1 और 2 सही हैं

- Q.No: 97 How often is the World Happiness Report released?

विश्व प्रसन्नता रिपोर्ट कितनी बार जारी की जाती है?

Quarterly

त्रैमासिक

Annually

प्रतिवर्ष

Triennially

त्रैवार्षिक

Biennially

द्विवार्षिक

- Q.No: 98 When focusing on a tree while on an anti-clockwise merry-go-round, from which side does it appear and exit?

जब आप घड़ी की विपरीत दिशा में घूमते हुए किसी पेड़ पर ध्यान केंद्रित करते हैं, तो वह किस ओर से दिखाई देता है और किस ओर से बाहर निकलता है?

Right to Left

दाएं से बाएं

Always visible

सदैव दृश्य

Never visible

कभी दिखाई नहीं देता

Left to Right

बाएं से दायां

- Q.No: 99 What does the term "Duckworth-Lewis Method" relate to in cricket?

क्रिकेट में "डकवर्थ-लुईस विधि" शब्द का संबंध किससे है?

Fielding restrictions

क्षेत्ररक्षण प्रतिबंध

Player ranking system

खिलाड़ी रैंकिंग प्रणाली

Bowling speed calculation

गेंदबाजी गति की गणना

Calculating revised target in rain-affected matches

वर्षा प्रभावित मैचों में संशोधित लक्ष्य की गणना

Q.No: 100	Which Constitutional Amendment Act made the Right to Education a Fundamental Right in India? किस संवैधानिक संशोधन अधिनियम ने शिक्षा के अधिकार को भारत में मौलिक अधिकार बना दिया?
44 th Amendment Act, 1978	
44 th संशोधन अधिनियम, 1978	
42 nd Amendment Act, 1976	
42 nd संशोधन अधिनियम, 1976	
86 th Amendment Act, 2002	
86 th संशोधन अधिनियम, 2002	
97 th Amendment Act, 2011	
97 th संशोधन अधिनियम, 2011	

PART - C (English Language and Comprehension)

Q.No: 101	Find the incorrect part of the sentence: She is one of the best singer in the city.
singer in the city	
She is one	
of the best	
No error	

Q.No: 102	Read the passage and answer the questions: Changes that seem small and unimportant at first will compound into remarkable results if you're willing to stick with them for years. We often convince ourselves that massive success requires massive action. Whether it's losing weight, building a business, or learning a new skill, we put pressure on ourselves to make some earth-shattering improvement that everyone will notice. However, improvement by just 1 percent each day may not be noticeable in the moment, but over time it can be far more meaningful. The same way that money compounds with interest, the effects of your habits multiply as you repeat them. The outcomes you see in your life today are often the result of small choices made over time, rather than dramatic changes. This is why habits are the compound interest of self-improvement. The longer you stick with them, the greater the returns. But just as positive habits can compound in your favor, negative habits can compound against you. A slight slip in discipline today may not seem like a big deal, but if repeated, it can steer you in a completely different direction. Success, then, is not a single event—it is the result of daily choices, made consistently over time. Identify the sentence with the correct use of subject-verb agreement:
The effects of your habits multiplies as you repeat them.	
The outcomes you see in your life today is often the result of small choices made over time.	
The effects of your habits multiply as you repeat them.	
The outcomes of your daily decisions determines your long-term success.	

Q.No: 103	<p>Read the passage and answer the questions:</p> <p>Changes that seem small and unimportant at first will compound into remarkable results if you're willing to stick with them for years. We often convince ourselves that massive success requires massive action. Whether it's losing weight, building a business, or learning a new skill, we put pressure on ourselves to make some earth-shattering improvement that everyone will notice.</p> <p>However, improvement by just 1 percent each day may not be noticeable in the moment, but over time it can be far more meaningful. The same way that money compounds with interest, the effects of your habits multiply as you repeat them. The outcomes you see in your life today are often the result of small choices made over time, rather than dramatic changes.</p> <p>This is why habits are the compound interest of self-improvement. The longer you stick with them, the greater the returns. But just as positive habits can compound in your favor, negative habits can compound against you. A slight slip in discipline today may not seem like a big deal, but if repeated, it can steer you in a completely different direction.</p> <p>Success, then, is not a single event—it is the result of daily choices, made consistently over time.</p> <p>What is the best meaning of "compound" in the sentence:</p> <p>"Changes that seem small and unimportant at first will compound into remarkable results if you're willing to stick with them for years."</p> <p>To decrease gradually</p> <p>To mix different elements</p> <p>To accumulate and grow over time</p> <p>To remain constant</p>
-----------	--

Q.No: 104	<p>Read the passage and answer the questions:</p> <p>Changes that seem small and unimportant at first will compound into remarkable results if you're willing to stick with them for years. We often convince ourselves that massive success requires massive action. Whether it's losing weight, building a business, or learning a new skill, we put pressure on ourselves to make some earth-shattering improvement that everyone will notice.</p> <p>However, improvement by just 1 percent each day may not be noticeable in the moment, but over time it can be far more meaningful. The same way that money compounds with interest, the effects of your habits multiply as you repeat them. The outcomes you see in your life today are often the result of small choices made over time, rather than dramatic changes.</p> <p>This is why habits are the compound interest of self-improvement. The longer you stick with them, the greater the returns. But just as positive habits can compound in your favor, negative habits can compound against you. A slight slip in discipline today may not seem like a big deal, but if repeated, it can steer you in a completely different direction.</p> <p>Success, then, is not a single event—it is the result of daily choices, made consistently over time.</p> <p>Choose the best antonym for the word "discipline" in the sentence:</p> <p>"A slight slip in discipline today may not seem like a big deal, but if repeated, it can steer you in a completely different direction."</p> <p>Commitment</p> <p>Carelessness</p> <p>Determination</p> <p>Focus</p>
-----------	---

Q.No: 105	<p>Read the passage and answer the questions:</p> <p>Changes that seem small and unimportant at first will compound into remarkable results if you're willing to stick with them for years. We often convince ourselves that massive success requires massive action. Whether it's losing weight, building a business, or learning a new skill, we put pressure on ourselves to make some earth-shattering improvement that everyone will notice.</p> <p>However, improvement by just 1 percent each day may not be noticeable in the moment, but over time it can be far more meaningful. The same way that money compounds with interest, the effects of your habits multiply as you repeat them. The outcomes you see in your life today are often the result of small choices made over time, rather than dramatic changes.</p> <p>This is why habits are the compound interest of self-improvement. The longer you stick with them, the greater the returns. But just as positive habits can compound in your favor, negative habits can compound against you. A slight slip in discipline today may not seem like a big deal, but if repeated, it can steer you in a completely different direction.</p> <p>Success, then, is not a single event—it is the result of daily choices, made consistently over time.</p> <p>What is the main idea of the passage?</p>
	Success comes from making one major change in life.
	Small daily improvements, when repeated consistently, lead to significant long-term results.
	Negative habits have no real impact unless they are extreme.
	Success is mostly determined by luck rather than effort.

Q.No: 106	<p>Read the passage and answer the questions:</p> <p>Changes that seem small and unimportant at first will compound into remarkable results if you're willing to stick with them for years. We often convince ourselves that massive success requires massive action. Whether it's losing weight, building a business, or learning a new skill, we put pressure on ourselves to make some earth-shattering improvement that everyone will notice.</p> <p>However, improvement by just 1 percent each day may not be noticeable in the moment, but over time it can be far more meaningful. The same way that money compounds with interest, the effects of your habits multiply as you repeat them. The outcomes you see in your life today are often the result of small choices made over time, rather than dramatic changes.</p> <p>This is why habits are the compound interest of self-improvement. The longer you stick with them, the greater the returns. But just as positive habits can compound in your favor, negative habits can compound against you. A slight slip in discipline today may not seem like a big deal, but if repeated, it can steer you in a completely different direction.</p> <p>Success, then, is not a single event—it is the result of daily choices, made consistently over time.</p> <p>What type of pronoun is the word "This" in the sentence, "This is why habits are the compound interest of self-improvement."?</p>
	Demonstrative pronoun
	Reflexive pronoun
	Abstract pronoun
	Subjective pronoun

Q.No: 107	<p>Read the following passage carefully and answer the questions that follow by selecting the most appropriate option from the given alternatives.</p> <p>Freedom of speech is a cornerstone of democratic societies, allowing individuals to express ideas, question authority, and promote change. However, in the digital world, this right encounters complex challenges. Social media platforms have become arenas where opinions can be voiced instantly—but also where hate speech, misinformation, and cyberbullying thrive. Balancing the right to speak freely with the responsibility to prevent harm is now a pressing debate. Should platforms censor harmful content, or would that violate freedom? While some argue that regulation is essential to protect vulnerable groups, others fear it might lead to suppression of dissent. The problem deepens when private companies—not elected bodies—decide what speech is allowed or banned. Striking the right balance requires thoughtful policies, digital literacy, and legal frameworks rooted in both human rights and public safety. In a world where words travel faster than thought, protecting free speech without enabling harm may be one of the defining tests of modern democracy.</p> <p>What central conflict is explored in the passage?</p>
Law vs. religion	
Profit vs. loss	
Freedom vs. online harm	
Privacy vs. piracy	

Q.No: 108	<p>Read the following passage carefully and answer the questions that follow by selecting the most appropriate option from the given alternatives.</p> <p>Freedom of speech is a cornerstone of democratic societies, allowing individuals to express ideas, question authority, and promote change. However, in the digital world, this right encounters complex challenges. Social media platforms have become arenas where opinions can be voiced instantly—but also where hate speech, misinformation, and cyberbullying thrive. Balancing the right to speak freely with the responsibility to prevent harm is now a pressing debate. Should platforms censor harmful content, or would that violate freedom? While some argue that regulation is essential to protect vulnerable groups, others fear it might lead to suppression of dissent. The problem deepens when private companies—not elected bodies—decide what speech is allowed or banned. Striking the right balance requires thoughtful policies, digital literacy, and legal frameworks rooted in both human rights and public safety. In a world where words travel faster than thought, protecting free speech without enabling harm may be one of the defining tests of modern democracy.</p> <p>Why is regulation of speech on social media controversial?</p>
It is illegal in all democracies	
It gives too much power to users	
It may suppress dissenting voices	
It slows down communication	

Q.No: 109	<p>Read the following passage carefully and answer the questions that follow by selecting the most appropriate option from the given alternatives.</p> <p>Freedom of speech is a cornerstone of democratic societies, allowing individuals to express ideas, question authority, and promote change. However, in the digital world, this right encounters complex challenges. Social media platforms have become arenas where opinions can be voiced instantly—but also where hate speech, misinformation, and cyberbullying thrive. Balancing the right to speak freely with the responsibility to prevent harm is now a pressing debate. Should platforms censor harmful content, or would that violate freedom? While some argue that regulation is essential to protect vulnerable groups, others fear it might lead to suppression of dissent. The problem deepens when private companies—not elected bodies—decide what speech is allowed or banned. Striking the right balance requires thoughtful policies, digital literacy, and legal frameworks rooted in both human rights and public safety. In a world where words travel faster than thought, protecting free speech without enabling harm may be one of the defining tests of modern democracy.</p> <p>What is the concern about private companies controlling speech?</p>
They are too small to influence politics	



Your file couldn't be accessed

It may have been moved, edited, or deleted.

ERR_FILE_NOT_FOUND

They lack legal authority or accountability

They promote academic debates

Not Answered

Q.No: 110	<p>Read the following passage carefully and answer the questions that follow by selecting the most appropriate option from the given alternatives.</p> <p>Freedom of speech is a cornerstone of democratic societies, allowing individuals to express ideas, question authority, and promote change. However, in the digital world, this right encounters complex challenges. Social media platforms have become arenas where opinions can be voiced instantly—but also where hate speech, misinformation, and cyberbullying thrive. Balancing the right to speak freely with the responsibility to prevent harm is now a pressing debate. Should platforms censor harmful content, or would that violate freedom? While some argue that regulation is essential to protect vulnerable groups, others fear it might lead to suppression of dissent. The problem deepens when private companies—not elected bodies—decide what speech is allowed or banned. Striking the right balance requires thoughtful policies, digital literacy, and legal frameworks rooted in both human rights and public safety. In a world where words travel faster than thought, protecting free speech without enabling harm may be one of the defining tests of modern democracy.</p> <p>According to the author, what is required to resolve this conflict?</p>
-----------	--

Removing all harmful users

Allowing complete freedom

Combining rights with safety through law and literacy

Banning social media worldwide

Q.No: 111	<p>Read the following passage carefully and answer the questions that follow by selecting the most appropriate option from the given alternatives.</p> <p>Freedom of speech is a cornerstone of democratic societies, allowing individuals to express ideas, question authority, and promote change. However, in the digital world, this right encounters complex challenges. Social media platforms have become arenas where opinions can be voiced instantly—but also where hate speech, misinformation, and cyberbullying thrive. Balancing the right to speak freely with the responsibility to prevent harm is now a pressing debate. Should platforms censor harmful content, or would that violate freedom? While some argue that regulation is essential to protect vulnerable groups, others fear it might lead to suppression of dissent. The problem deepens when private companies—not elected bodies—decide what speech is allowed or banned. Striking the right balance requires thoughtful policies, digital literacy, and legal frameworks rooted in both human rights and public safety. In a world where words travel faster than thought, protecting free speech without enabling harm may be one of the defining tests of modern democracy.</p> <p>What tone does the author adopt in the passage?</p>
-----------	--

Dismissive

Alarmist

Balanced and reflective

Aggressive

Q.No: 112	<p>In the following passage, some words have been omitted. Read the passage carefully and choose the most appropriate option from the given alternatives to fill in each blank. Mark your answer for each question.</p> <p>In modern societies, the concept of freedom is often celebrated as an essential right. However, true freedom is not the absence of rules but the presence of thoughtful (1)_____. Without it, freedom risks turning into chaos, where individual actions undermine collective welfare. A society that prizes only personal liberty without shared responsibility may soon face moral and civic (2)_____. While people often equate freedom with doing as they please, meaningful liberty requires a commitment to boundaries that preserve dignity and (3)_____ for all. This balance is difficult to maintain, especially in democracies where voices are many and interests often (4)_____. Yet, it is precisely through dialogue, compromise, and mutual respect that freedom finds its most enduring expression. In the end, freedom divorced from responsibility is not progress, but a subtle (5)_____ of what it truly means to be free.</p> <p>(1)</p>
	control
	governance
	restraint
	leadership

Q.No: 113	<p>In the following passage, some words have been omitted. Read the passage carefully and choose the most appropriate option from the given alternatives to fill in each blank. Mark your answer for each question.</p> <p>In modern societies, the concept of freedom is often celebrated as an essential right. However, true freedom is not the absence of rules but the presence of thoughtful (1)_____. Without it, freedom risks turning into chaos, where individual actions undermine collective welfare. A society that prizes only personal liberty without shared responsibility may soon face moral and civic (2)_____. While people often equate freedom with doing as they please, meaningful liberty requires a commitment to boundaries that preserve dignity and (3)_____ for all. This balance is difficult to maintain, especially in democracies where voices are many and interests often (4)_____. Yet, it is precisely through dialogue, compromise, and mutual respect that freedom finds its most enduring expression. In the end, freedom divorced from responsibility is not progress, but a subtle (5)_____ of what it truly means to be free.</p> <p>(2)</p>
	revival
	collapse
	education
	loyalty

Q.No: 114	<p>In the following passage, some words have been omitted. Read the passage carefully and choose the most appropriate option from the given alternatives to fill in each blank. Mark your answer for each question.</p> <p>In modern societies, the concept of freedom is often celebrated as an essential right. However, true freedom is not the absence of rules but the presence of thoughtful (1)_____. Without it, freedom risks turning into chaos, where individual actions undermine collective welfare. A society that prizes only personal liberty without shared responsibility may soon face moral and civic (2)_____. While people often equate freedom with doing as they please, meaningful liberty requires a commitment to boundaries that preserve dignity and (3)_____ for all. This balance is difficult to maintain, especially in democracies where voices are many and interests often (4)_____. Yet, it is precisely through dialogue, compromise, and mutual respect that freedom finds its most enduring expression. In the end, freedom divorced from responsibility is not progress, but a subtle (5)_____ of what it truly means to be free.</p> <p>(3)</p>
	justice
	convenience
	access
	equality

Q.No: 115	<p>In the following passage, some words have been omitted. Read the passage carefully and choose the most appropriate option from the given alternatives to fill in each blank. Mark your answer for each question.</p> <p>In modern societies, the concept of freedom is often celebrated as an essential right. However, true freedom is not the absence of rules but the presence of thoughtful (1)_____. Without it, freedom risks turning into chaos, where individual actions undermine collective welfare. A society that prizes only personal liberty without shared responsibility may soon face moral and civic (2)_____. While people often equate freedom with doing as they please, meaningful liberty requires a commitment to boundaries that preserve dignity and (3)_____ for all. This balance is difficult to maintain, especially in democracies where voices are many and interests often (4)_____. Yet, it is precisely through dialogue, compromise, and mutual respect that freedom finds its most enduring expression. In the end, freedom divorced from responsibility is not progress, but a subtle (5)_____ of what it truly means to be free.</p> <p>(4)</p>
	vary
	divide
	contradict
	clash

Q.No: 116	<p>In the following passage, some words have been omitted. Read the passage carefully and choose the most appropriate option from the given alternatives to fill in each blank. Mark your answer for each question.</p> <p>In modern societies, the concept of freedom is often celebrated as an essential right. However, true freedom is not the absence of rules but the presence of thoughtful (1)_____. Without it, freedom risks turning into chaos, where individual actions undermine collective welfare. A society that prizes only personal liberty without shared responsibility may soon face moral and civic (2)_____. While people often equate freedom with doing as they please, meaningful liberty requires a commitment to boundaries that preserve dignity and (3)_____ for all. This balance is difficult to maintain, especially in democracies where voices are many and interests often (4)_____. Yet, it is precisely through dialogue, compromise, and mutual respect that freedom finds its most enduring expression. In the end, freedom divorced from responsibility is not progress, but a subtle (5)_____ of what it truly means to be free.</p> <p>(5)</p>
	rejection
	misunderstanding
	distortion
	creation

Q.No: 117	<p>Select the most appropriate option to fill in the blank.</p> <p>The audience was mesmerized ____ the speaker's eloquence.</p>
	for
	with
	to
	by

Q.No: 118	<p>Select the most appropriate option to improve the bold part of the sentence.</p> <p>No sooner I reached the platform than the train left.</p>
	I had no sooner reached
	No sooner did I reach
	I no sooner reached
	No sooner had I reached

Q.No: 119	Which of the given options is the most logical sequencing of the following sentences to form a meaningful paragraph? 1. They are formed by tiny animals called coral polyps. 2. Coral reefs are home to many marine species. 3. This is caused by rising ocean temperatures and pollution. 4. Corals are losing their wonderful colours due to coral bleaching.
1-3-2-4	
2-1-4-3	
4-3-2-1	
2-3-1-4	

Q.No: 120	Choose the one which can be substituted for the given sentence. A word formed from the initial letters of a name
Pseudonym	
Homonym	
Acronym	
Antonym	

Q.No: 121	Select the most appropriate option to fill in the blank. She is capable ____ handling the situation.
in	
by	
to	

Q.No: 122	Which among the following sentences uses adjective with correct degree of comparison.
New Delhi is more hotter to Chandigarh.	
New Delhi is more hotter than Chandigarh.	
New Delhi is hotter to Chandigarh.	
New Delhi is hotter than Chandigarh.	

Q.No: 123	Choose the correct option to complete the sentence. She couldn't help but _____ up during an emotional scene in the movie.
tear	
tier	
tyre	
tire	

Q.No: 124	Rearrange the parts of the sentence in the correct order. Advances in satellite imaging P. across diverse geographic regions Q. enabling accurate climate modelling R. and disaster prediction systems S. have transformed environmental monitoring,
SQRP	
PRQS	
QPSR	
RPSQ	

Q.No: 125	Choose the correct sequence to form a meaningful sentence: (A) served (B) dinner (C) they (D) late
ACBD	
BADC	
BACD	
CBAD	

Q.No: 126	Choose the correct direct speech form of the following sentence. They requested the officer to permit them to go on leave for three days.
They said to the officer, "Please permit us going on leave by three days."	
They said to the officer, "Please permit us to go on leave for three days."	
They said to the officer, "Please permit them to goes on leave for three days."	
They said to the officer, "Request to permit us to go on leave for three days."	

Q.No: 127	Choose the synonym of the word 'Bawdy'.
Coarse	
Support	
Delay	
Establish	

Q.No: 128	In the following question, the first and the last parts of the sentence/passage are numbered 1 and 6. The rest of the sentence/passage is split into four parts — P, Q, R, and S. These four parts are not given in their proper order. Read the sentence/passage and find the most logical order of the parts between 1 and 6. The spacecraft initiated descent towards the red planet. P: The data gathered during this process will aid future missions. Q: The heat shield protected it from atmospheric entry. R: Soon after, the parachutes deployed successfully. S: Engineers monitored every second of the landing sequence. 6. This landing marked a historic step in interplanetary exploration.
RQSP	
QSRP	
SQRP	
QRSP	

Q.No: 129	Choose the correct option to replace the underlined word/phrase in the following sentence: The car is moving very <u>fastly</u> on the road.
fastliness	
quickliness	
fast	
quicker	

Q.No: 130	Fill in the blank with the most appropriate option: The director's remarks did not ___ well with the board members, leading to immediate backlash.
go out	
go in	
go over	
go off	

Q.No: 131	Choose the antonym of 'mature':
Developed	
Immature	
Experienced	
Grown	

Q.No: 132	Select the most appropriate option to fill in the blank. They congratulated him ___ winning the match.
of	
for	
on	
at	

Q.No: 133	Select the correct passive form of the given sentence. "He is solving a complex problem."
A complex problem is solved.	
A complex problem is being solved by him.	
A complex problem has solved.	
A complex problem had solved.	

Q.No: 134	Select the synonym of Reticent .
Arrogant	
Reserved	
Talkative	

Outspoken

Q.No: 135 Select the most appropriate option to fill in the blank.
You must cope ____ difficulties.

for

in

by

with

Q.No: 136 Fill in the blank with appropriate prepositions.

When you have completed reading the book, keep it _____ the shelf.

in

on

against

across

Q.No: 137 Choose the antonym of 'prudent':

Judicious

Thoughtless

Cautious

Sensible

Q.No: 138 Select the correct active form.
"The town was destroyed by the earthquake."

The earthquake destroyed the town.

The earthquake destroys the town.

The earthquake had destroyed the town.

The earthquake was destroying the town.

Q.No: 139 Select the most appropriate option to improve the bold part of the sentence.
The meeting will begin **by** 3 PM.

on

from

at

around

Q.No: 140 Choose the correct indirect speech form of the following sentence.

He said, "Come here."

He told me to go there.

He told to go there.

He told me to come there.

He told me to come here.

Q.No: 141 Select the synonym of **Deft**.

Inept

Skillful

Awkward

Clumsy

Q.No: 142 Select the option that expresses the given sentence in Direct Speech.
They told us that we needn't bring anything.

They said, "You don't need to bring anything."

They said, "You didn't need to bring anything."

They said, "You needn't bring anything."

They said, "You must not bring anything."

Q.No: 143 Select the correct active form.
"He is known to me."

I knew him.

I know him.

I had known him.

I know about him.

Q.No: 144 Find the incorrect part of the sentence:
She delivered a speech in the prize distribution function.

She delivered

in the prize distribution function

No error

a speech

Q.No: 145 Choose the correctly spelt word:

Questionair

Questionare

Questionaire

Questionnaire

Q.No: 146 Convert the sentence provided below from its passive voice structure to an active voice structure:
The final draft of the report has been reviewed by the supervisor thoroughly.

The supervisor has reviewed the final draft of the report thoroughly.

The final draft was reviewed by the supervisor thoroughly.

The supervisor was reviewing the final draft thoroughly.

The supervisor had reviewed the final draft thoroughly.

Q.No: 147 Select the most appropriate option to improve the bold part of the sentence.
She is confident **to win the match**.

in winning

of winning the match

in win the match

to winning the match

Q.No: 148 Select the synonym of **Relinquish**.

Abandon

Maintain

Continue

Retain

Q.No: 149 Select the most appropriate option to improve the bold part of the sentence.
She prefers **to stay at home than go out**.

to staying home than going out

staying home rather going out

staying at home to going out

to stay at home to going out

Q.No: 150 Select the most appropriate option to improve the bold part of the sentence.
Hardly he had reached the station when the train left.

He had hardly reached

Hardly had he reached

No sooner he reached

He hardly had reached

Q.No: 151 Choose the correct option to complete the sentence.

The new policy has _____ the use of plastic bags in the store.

bond

banned

bend

band

Q.No: 152	What does the idiom 'Turn a deaf ear' mean?
	Ignore advice
	Argue
	Listen carefully
	Reply angrily

Q.No: 153	Select the option that expresses the given sentence in Direct to Indirect Speech. Ravi said, "I will be joining the new office soon."
	Ravi said that he joins the new office soon.
	Ravi said that he would join the new office soon.
	Ravi said that he will be joining the new office soon.
	Ravi said that he would be joining the new office soon.

Q.No: 154	Select the correct passive form of the given sentence. "They should have been following the instructions carefully."
	The instructions should be followed carefully.
	The instructions should have been being followed carefully.
	The instructions should have been followed carefully.
	The instructions should followed carefully.

Q.No: 155	Select the most appropriate option to fill in the blank. The thief broke ____ the house.
	by
	into
	in
	at

Q.No: 156	What does the idiom 'Pull someone's leg' mean?
	Joke with them
	Praise them
	Annoy them
	Criticize them

Q.No: 157	What is the meaning of the proverb "Don't count your chickens before they hatch"?
	Hatching eggs is an unpredictable process.
	Don't assume success before it happens.
	Chickens should be counted immediately after hatching.
	Always count your livestock carefully.

Q.No: 158	Choose the part of the sentence that contains an error: He succeeded to win the prize.
the prize	
to win	
No error	
He succeeded	

Q.No: 159	Select the synonym of Foster .
Neglect	
Reject	
Promote	
Oppose	

Q.No: 160	Select the correct active form of the given sentence. "The documents are being submitted by the secretary."
The secretary submits the documents.	
The secretary has submitted the documents.	
The secretary is submitting the documents.	
The secretary was submitting the documents.	

Q.No: 161	Pick the spelling that is correct for an educational qualification.
Diploma	
Diplumma	
Dipluma	
Diploma	

Q.No: 162	What is the meaning of the word "Superannuation"?
A system of retirement benefits for employees	
The act of receiving a bonus	
A type of insurance for future health care	
The process of becoming too old to work	

Q.No: 163	Select the antonym of 'Vilify'.
Commend	
Malign	
Slur	
Defame	

Q.No: 164	Which of the following words refers to a group of people who have graduated from a particular school, college, or university?
Student	
Visitor	
Teacher	
Alumni	

Q.No: 165	Identify the error in the sentence. He is a fastly growing leader in the organization.
leader	
growing	
fastly	
organization	

Q.No: 166	Convert the sentence provided below from its passive voice structure to an active voice structure: The cake was baked by Mary for her brother's birthday party.
Her brother had the cake baked by Mary.	
Mary is baking the cake for her brother's birthday party.	
Mary baked the cake for her brother's birthday party.	
The birthday cake was made by Mary for her brother.	

Q.No: 167	Select the option that expresses the given sentence in Direct to Indirect Speech. The captain said, "Stand at ease!"
The captain said to stand at ease.	
The captain said that they should stand at ease.	
The captain advised them to stand at ease.	
The captain ordered them to stand at ease.	

Q.No: 168	Choose the correct indirect speech form of the following sentence. Madhubala said to Dillip, "I had a very sumptuous meal yesterday."
Madhubala told Dillip that she had had a very sumptuous meal the day after.	
Madhubala told Dillip that she had had a very sumptuous meal the following day.	
Madhubala told Dillip that she had had a very sumptuous meal the previous day.	
Madhubala told Dillip that she had a very sumptuous meal the previous day.	

Q.No: 169	Select the most appropriate homonym. He could not bank on unreliable friends.
Deposit	

Borrow

Rely

Dismiss

Q.No: 170 Choose the correct one-word substitution for the following description.
"A person who talks excessively"

Silent

Introvert

Reticent

Garrulous

Q.No: 171 In the following question, the first and the last parts of the sentence/passage are numbered 1 and 6. The rest of the sentence/passage is split into four parts — P, Q, R, and S. These four parts are not given in their proper order. Read the sentence/passage and find the most logical order of the parts between 1 and 6.

The United Nations was formed after the Second World War. P: It was established to prevent future global conflicts. Q: Over the decades, it has expanded its roles. R: Now it addresses issues like climate change and human rights. S: Its peacekeeping missions have played a vital role in conflict zones. 6. Despite criticisms, the UN remains a key international body.

QPRS

PRSQ

RPSQ

PQSR

Q.No: 172 In the following question, the first and the last parts of the sentence/passage are numbered 1 and 6. The rest of the sentence/passage is split into four parts — P, Q, R, and S. These four parts are not given in their proper order. Read the sentence/passage and find the most logical order of the parts between 1 and 6.

Agriculture is the backbone of our economy. P: Farmers work hard despite unpredictable weather. Q: They grow crops that feed the nation. R: Yet, they face several challenges. S: Modern technology can support better yield. 6. Ensuring farmer welfare is national duty.

PQRS

PROS

QPRS

QRSP

Q.No: 173 Find the incorrect part of the sentence:
You should not laugh on others.

laugh on

No error

You should not

others

Q.No: 174 The phrase 'A white elephant' refers to:

Lucky charm

Valuable item

Costly burden

Rare animal

Q.No: 175 Select the most appropriate option to fill in the blank.
The train arrived late ____ the station.

in

to

at

on

Q.No: 176 Select the option that expresses the given sentence in Direct to Indirect Speech.
She said, "I dare not oppose him."

She said she has not dared to oppose him.

She said she had dared not oppose him.

She said she dared not oppose him.

She said she dare not oppose him.

Q.No: 177 Select the correct active form of the given sentence.
"The bills are paid by him every month."

He paid the bills every month.

He pays the bills every month.

He was paying the bills every month.

He is paying the bills every month.

Q.No: 178 Find the word with a spelling mistake.

Ephemera

Preposterous

Alterior

Paraphernalia

Q.No: 179 Identify the part containing a grammatical or structural error:
The manager together with his staff have gone for lunch.

together with his staff

No error

The manager

have gone for lunch

Q.No: 180 Choose the correct one-word substitution for:
"A person who studies the origin and development of human societies and cultures."

Sociologist

Historian

Archaeologist

Anthropologist

Q.No: 181 Choose the antonym of 'authorize':

Forbid

Allow

Empower

Permit

Q.No: 182 Which of the following terms refers to a person who loves or collects books?

Bibliophile

Philatelist

Botanist

Anthropologist

Q.No: 183 Select the most appropriate option to improve the bold part of the sentence.
He worked very **hardly** to pass the exam.

sincerely

regularly

hard

harder

Q.No: 184 Find the misspelt word.

Preposterous

Prepostrous

legitimate

kneel

Q.No: 185 Identify the part containing a grammatical or structural error:
One of the questions were very difficult.

very difficult

were

One of the questions

No error

Q.No: 186 Choose the antonym of 'resilient':

Tough

Buoyant

Fragile

Flexible

Q.No: 187 In the following question, the first and the last parts of the sentence/passage are numbered 1 and 6. The rest of the sentence/passage is split into four parts — P, Q, R, and S. These four parts are not given in their proper order. Read the sentence/passage and find the most logical order of the parts between 1 and 6.

Festivals play a big role in cultural unity. P: They bring together people of different beliefs. Q: Each region celebrates with its unique customs. R: Shared celebrations promote tolerance and joy. S: They also preserve traditional art forms. 6. Hence, festivals strengthen the social fabric.

PQRS

PRQS

RPSQ

QSPR

Q.No: 188 What does the idiom 'Cry over spilt milk' mean?

Regret a past loss

Ignore problems

Be indifferent

Work harder

Q.No: 189 Choose the correct option to complete the sentence.

She walked gracefully down the ____ during the wedding ceremony.

oil

aisle

isle

ail

Q.No: 190 Identify the error in the sentence.

She adopted a honest approach to resolving the issue.

honest

issue

resolving

✖

Q.No: 191 Select the most appropriate option to improve the bold part of the sentence.

I prefer tea **than coffee**.

instead coffee

to coffee

rather coffee

over coffee

Q.No: 192 Choose the correct direct speech form of the following sentence.

The farmer asked his wife why she was upset when he had just returned from the city.

The farmer said to his wife, "Why are you so upset when I just returned from the city?"

The farmer said to his wife, "Why did you upset when I returned from the city?"

The farmer said to his wife, "Why are you upset when I have just returned from the city?"

The farmer said to his wife, "Why are you upset when I was just returned from the city?"

Q.No: 193 Select the most appropriate homonym.
The opposition's **motion** was rejected.

Commotion

Emotion

Movement

Proposa

Q.No: 194 Arrange the sentence parts:
(A) on time (B) the bus (C) arrived (D) at the stop

BCAD

BACD

CBAD

ABCD

Q.No: 195 Find the incorrect part of the sentence:
This book comprises of five chapters.

No error

comprises of

This book

five chapters

Q.No: 196 Choose the sentence with correct collocation for the word 'pattern'

The chef has arranged the cherries by a pattern.

The chef has arranged the cherries of a pattern.

The chef has arranged the cherries with a pattern.

The chef has arranged the cherries in a pattern.

Q.No: 197 Select the option that expresses the given sentence in Direct to Indirect Speech.
They said, "We enjoy watching cricket."

They said that they had enjoyed watching cricket.

They said that they have enjoyed watching cricket.

They said that they enjoy watching cricket.

They said that they enjoyed watching cricket.

Q.No: 198 Choose the antonym of 'affirm':

Refuse

Accept

Acknowledge

Support

Q.No: 199 Arrange the sentence parts:
(A) announced (B) the winner (C) was (D) yesterday evening

BCAD

CBAD

ACBD

BACD

Q.No: 200 Select the correct passive form of the given sentence.
"We are cleaning the room."

The room is cleaned.

The room has been cleaning.

The room was cleaned.

The room is being cleaned by us.



SSC ONLINE EXAMINATION

CANDIDATE RESPONSE SHEET/GRIEVANCE SYSTEM

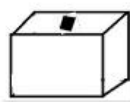
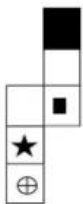
[View Your Responses](#)[Click Here Grievance About Question](#)[Click Here View Grievance Questions](#)Admin loggedin.[[Logout](#)]

Exam Name : Steno Grade C and D ▼
Test Date : 07 Aug 2025
Test Time : 05:30 PM
Centre : DLNEW219_1_R K DIGITAL COMPUTER- CENTRE 2_100128

Correct Option selected Wrong Option selected Correct Option Not Answered

PART - A (General Intelligence & Reasoning)

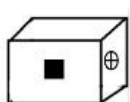
Q.No: 1 Select the possible cubes that can be formed by folding the given sheet.



A



B

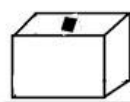
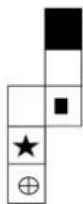


C



D

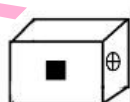
दिए गए शीट को मोड़कर बनाए जा सकने वाले संभावित घनों का चयन करें।



A



B



C



D

A and C only

केवल A और C

A, B, D only

केवल A, B, D

B and C Only

केवल B और C

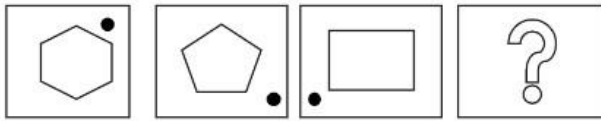
A only

केवल A

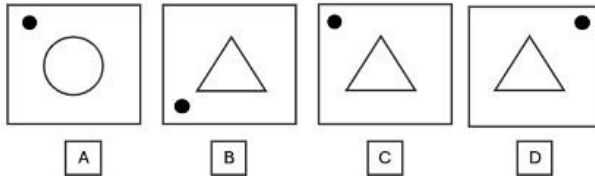
Q.No: 2

What will be the next figure?

Question figure:

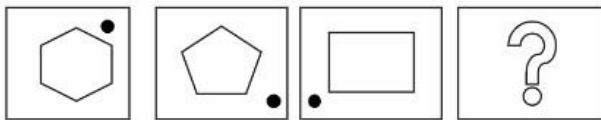


Answer figure:

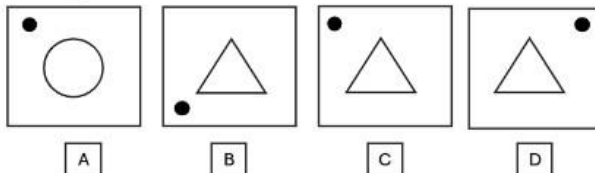


अगली आकृति क्या होगी?

प्रश्न आकृति:



उत्तर आकृति:



A

A

B

B

C

C

D

D

Q.No: 3

Apple, Banana, Carrot, Mango – which is the odd one?

सेब, केला, गाजर, आम - इनमें से कौन सा विषम है?

Mango

आम

Banana

केला

Carrot

गाजर

Apple

सेब

Q.No: 4

Read each scenario carefully, evaluate all options, identify the action that best navigates the various competing factors and values.

You're enjoying a casual evening gathering at a close friend's home. During the evening, your friend decides to put on a movie that you immediately recognize as a pirated copy they downloaded illegally. Your friend excitedly asks you to help connect their laptop to the TV, and everyone else at the gathering seems oblivious or unconcerned. You personally disapprove of piracy but don't want to create an awkward situation or offend your friend.

प्रत्येक परिदृश्य को ध्यान से पढ़ें, सभी विकल्पों का मूल्यांकन करें, और उस कार्य की पहचान करें जो विभिन्न प्रतिस्पर्धी कारकों और मूल्यों को सबसे अच्छी तरह से संतुलित करता है।

आप अपने एक करीबी दोस्त के घर पर एक आरामदायक शाम की सभा का आनंद ले रहे हैं। शाम के दौरान, आपका दोस्त एक फिल्म चलाने का फैसला करता है जिसे आप तुरंत एक पायरेटेड कॉपी के रूप में पहचान लेते हैं जिसे उन्होंने अवैध रूप से डाउनलोड किया है। आपका दोस्त उत्साहपूर्वक आपको अपने लैपटॉप को टीवी से जोड़ने में मदद करने के लिए कहता है, और सभा में बाकी सभी लोग अनजान या बेपरवाह लगते हैं। आप व्यक्तिगत रूप से पायरेसी का विरोध करते हैं लेकिन एक अजीब स्थिति पैदा नहीं करना चाहते या अपने दोस्त को नाराज़ नहीं करना चाहते।

Publicly refuse to help and explain loudly to your friend and the group why piracy is wrong.

सार्वजनिक रूप से मदद करने से इनकार करें और अपने दोस्त और समूह को जोर से समझाएं कि पायरेसी गलत क्यों है।

Watch the movie, but later, report your friend to copyright authorities.

फिल्म देखें, लेकिन बाद में, अपने दोस्त की कॉपीराइट अधिकारियों को रिपोर्ट करें।

Discreetly excuse yourself from participating in the setup or watching the movie, perhaps by saying you need to make a call or step outside for a moment.

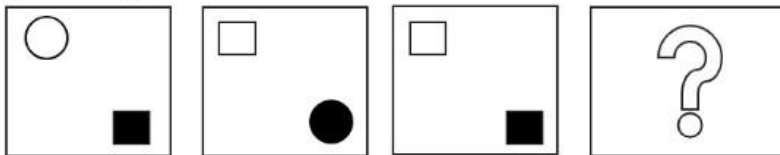
विवेकपूर्ण तरीके से सेटअप में भाग लेने या फिल्म देखने से खुद को अलग कर लें, शायद यह कहकर कि आपको एक कॉल करनी है या कुछ देर के लिए बाहर जाना है।

Go along with it and help connect the laptop, avoiding any discomfort or confrontation.

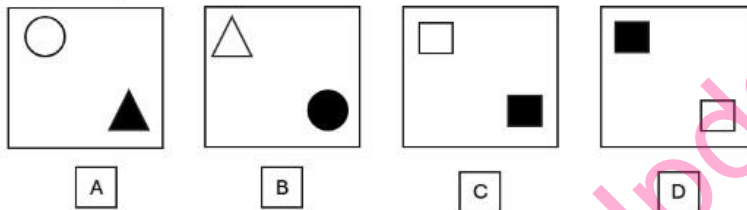
इसके साथ चलें और लैपटॉप कनेक्ट करने में मदद करें, किसी भी असहजता या टकराव से बचें।

Q.No: 5 What should come at the place of question figure?

Question figure:

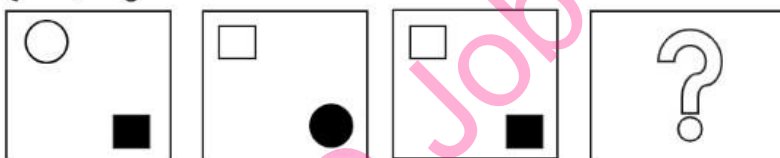


Answer figure:

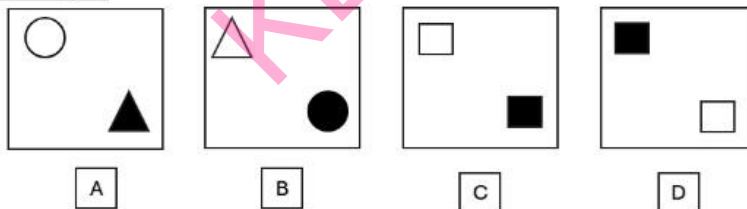


प्रश्न आकृति के स्थान पर क्या आना चाहिए?

प्रश्न आकृति:



उत्तर आकृति:



D

D

A

A

B

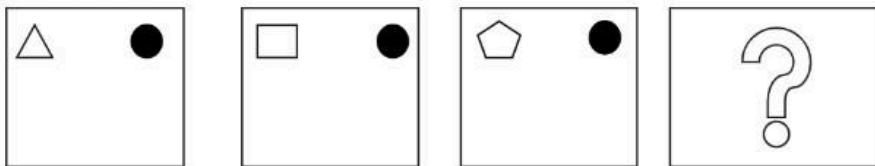
B

A

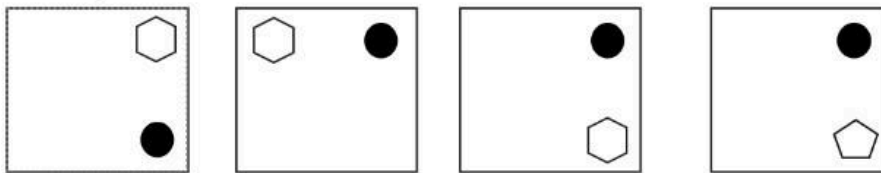
A

Q.No: 6 What should be at the place of question mark?

Question Figure:



Answer Figure:



A

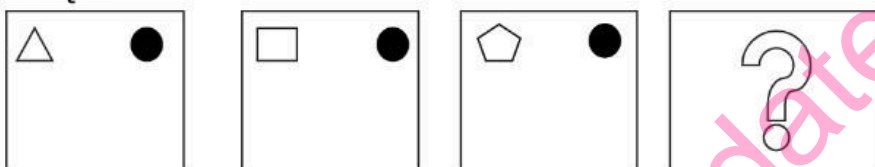
B

C

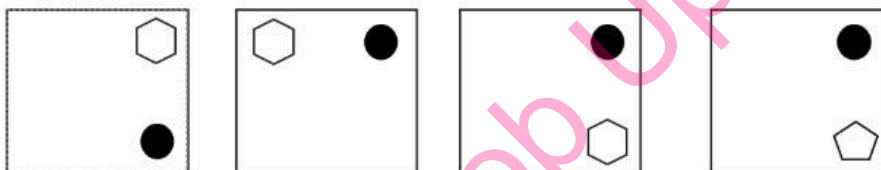
D

प्रश्न चिह्न के स्थान पर क्या होना चाहिए?

प्रश्न आकृति:



उत्तर आकृति:



A

B

C

D

- ☐ A
- ☐ A
- ☐ C
- ☐ C
- ☐ D
- ☐ D

Q.No: 7 What will be the next number in the series: 19, 37, 73, 145, ?

श्रृंखला में अगला अंक क्या होगा: 19, 37, 73, 145, ?

- 288
- 288
- ☒ 289
- ☒ 289
- 290
- 290
- 286
- 286

Q.No: 8 Find the next number in the series: 2, 6, 12, 20, 30, ?

श्रृंखला में अगली संख्या ज्ञात कीजिए: 2, 6, 12, 20, 30, ?

40

40

44

44

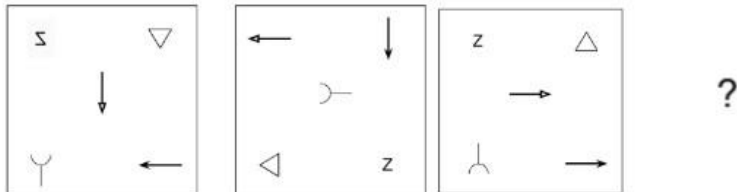
42

42

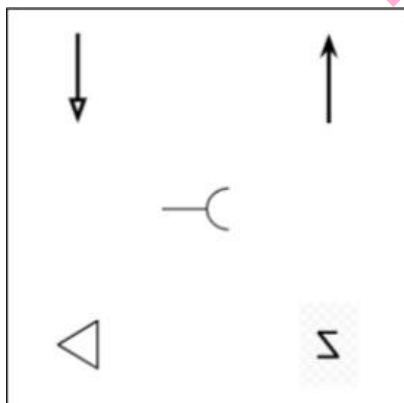
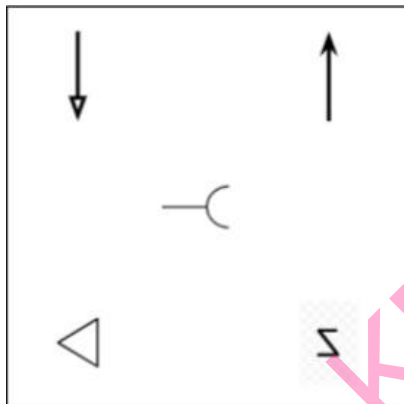
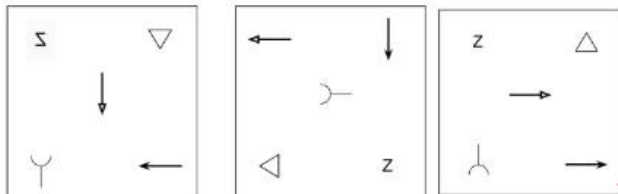
36

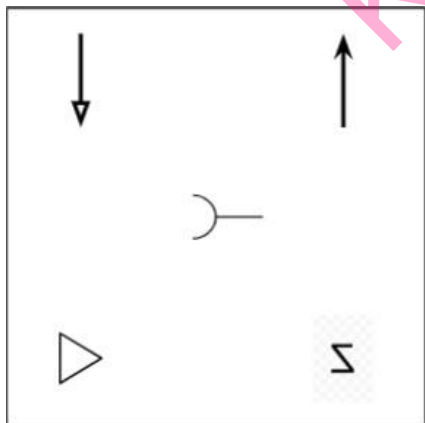
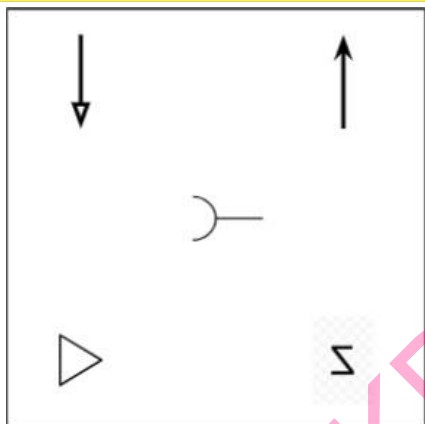
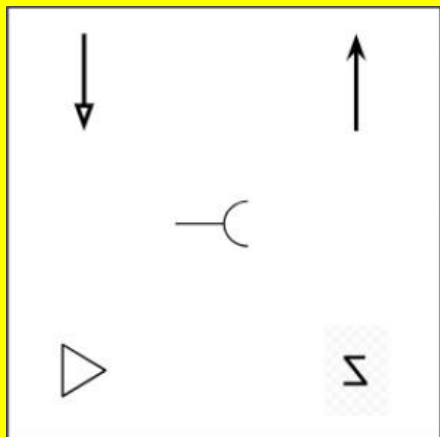
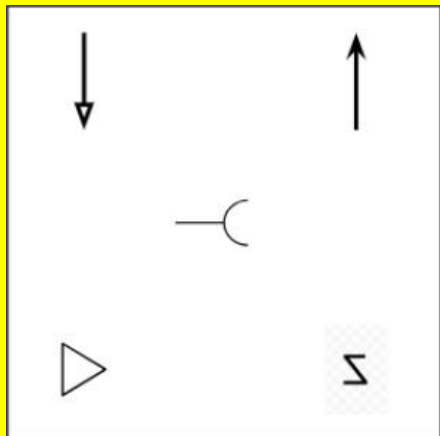
36

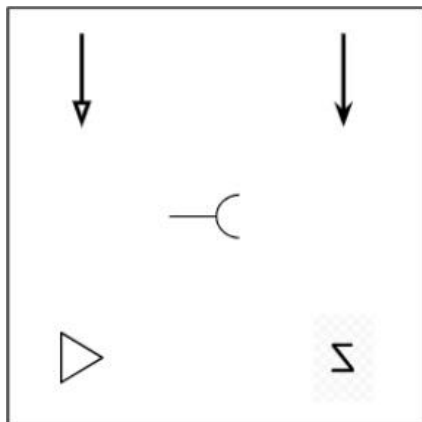
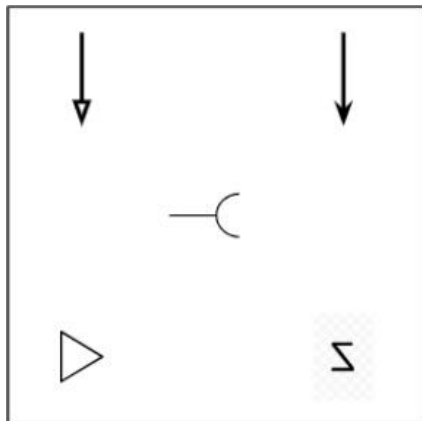
Q.No: 9 Figure A and B are related in a particular manner. Establish the same relationship between figures C and D by choosing the figure amongst these four options which would replace the question mark in figure D .



आकृति A और B एक विशेष तरीके से संबंधित हैं। इन चार विकल्पों में से वह आकृति चुनकर आकृति C और D के बीच समान संबंध स्थापित कीजिए जो आकृति D में प्रश्नवाचक चिह्न के स्थान पर आएगी।







Not Answered

Q.No: 10 A shape is shown below, followed by four options. One of them is the correct mirror image of the shape. Choose the CORRECT option.



Which of the following is the correct mirror image?

नीचे एक आकृति दिखाई गई है, जिसके बाद चार विकल्प दिए गए हैं। उनमें से एक आकृति का सही दर्पण प्रतिबिंब है। सही विकल्प चुनें।



निम्नलिखित में से कौन सा सही दर्पण प्रतिबिंब है?



Q.No: 11 What will come in place of the question mark (?) in the following equation?

$$100 \div 10 - 7 + 2 \times 6 = ?$$

निम्नलिखित समीकरण में प्रश्नवाचक चिह्न (?) के स्थान पर क्या आएगा?

$$100 \div 10 - 7 + 2 \times 6 = ?$$

12

12

5

5

20

20

15

15

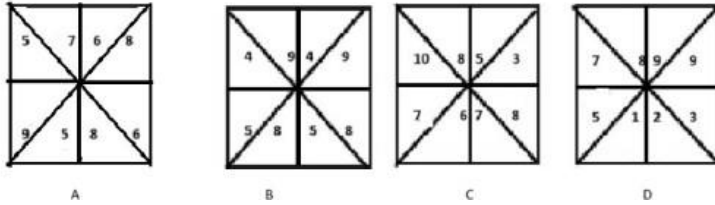
Q.No: 12	A figure consists of a square divided into 9 equal smaller squares (3×3), and 2 diagonals are drawn in the outer square. How many triangles are there? एक आकृति में एक वर्ग है जिसे 9 बराबर छोटे वर्गों (3×3) में विभाजित किया गया है, और बाहरी वर्ग में 2 विकर्ण खींचे गए हैं। इसमें कितने त्रिभुज हैं?
20	
20	
16	
16	
24	
24	
28	
28	
Not Answered	

Q.No: 13	<p>Post: Content Head – EdTech Division Eligibility Criteria (as on 15-02-2025):</p> <p>Master's in English/Linguistics/Education with minimum 68% marks. Must have minimum 6 years of experience, with 3 years in academic content creation. Should have managed a team of 5 or more members for at least 1 year. Must have published at least 2 educational research articles in recognized journals.</p> <p>Special Clause: If candidate has only 1 research article, but has 8+ years of experience and holds an M.Ed. or B.Ed. degree, refer to Board of Academic Excellence. If academic marks are below 68%, but has 3+ research papers and training certifications, refer to Chief Editor.</p> <p>Case: Aditya has 66% in MA English, 9 years of experience (4 in content creation), led a team for 2 years, has 3 published academic research papers, and holds a B.Ed. degree.</p> <p>Question: What should be done in Aditya's case?</p> <p>पद: कंटेंट हेड – एडटेक डिवीजन पात्रता मापदंड (दिनांक 15-02-2025 तक): अंग्रेजी/भाषाविज्ञान/शिक्षा में मास्टर डिग्री न्यूनतम 68% अंकों के साथ। न्यूनतम 6 वर्ष का अनुभव होना चाहिए, जिसमें से 3 वर्ष अकादमिक कंटेंट निर्माण में हो। कम से कम 1 वर्ष के लिए 5 या अधिक सदस्यों की टीम का प्रबंधन किया हो। मान्यता प्राप्त पत्रिकाओं में कम से कम 2 शैक्षिक शोध लेख प्रकाशित किए हों।</p> <p>विशेष खंड: यदि उम्मीदवार के पास केवल 1 शोध लेख है, लेकिन 8+ वर्षों का अनुभव है और उसके पास एम.एड. या बी.एड. की डिग्री है, तो बोर्ड ऑफ एकेडमिक एक्सीलेंस को भेजें। यदि अकादमिक अंक 68% से कम हैं, लेकिन उसके पास 3+ शोध पत्र और प्रशिक्षण प्रमाण पत्र हैं, तो मुख्य संपादक को भेजें।</p> <p>मामला: आदित्य के पास एम.ए. अंग्रेजी में 66% अंक हैं, 9 वर्ष का अनुभव (जिसमें से 4 वर्ष कंटेंट निर्माण में हैं), 2 साल तक टीम का नेतृत्व किया है, उसके पास 3 प्रकाशित अकादमिक शोध पत्र हैं, और उसके पास बी.एड. की डिग्री भी है।</p> <p>प्रश्न: आदित्य के मामले में क्या किया जाना चाहिए?</p>
	Reject the candidate
	उम्मीदवार को अस्वीकार करें।
	Refer to Chief Editor
	मुख्य संपादक को भेजें।
	Select the candidate
	उम्मीदवार का चयन करें।
	Refer to Board of Academic Excellence
	शैक्षणिक उत्कृष्टता बोर्ड को भेजें।
Not Answered	

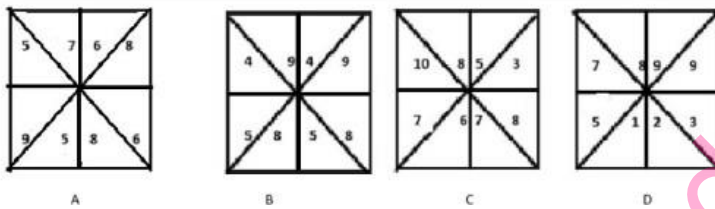
Q.No: 14	<p>In each of the following questions, two numbers are given which follow a certain logical or arithmetic relationship. Identify the same pattern and apply it to find the missing number in the second pair. Choose the correct option from the given alternatives.</p> <p>15 : 8 :: 31 : ?</p> <p>निम्नलिखित प्रत्येक प्रश्न में दो संख्याएँ दी गई हैं जो एक निश्चित तार्किक या अंकगणितीय संबंध का पालन करती हैं। उसी पैटर्न को पहचानिए और दूसरे जोड़े में लुप्त संख्या ज्ञात करने के लिए उसका प्रयोग कीजिए। दिए गए विकल्पों में से सही विकल्प चुनिए।</p> <p>15 : 8 :: 31 : ?</p>
----------	---

8
8
16
16
14
14
15
15

Q.No: 15 Which figure is different from others?



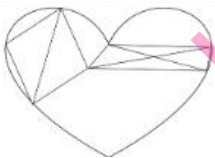
कौन सा आंकड़ा दूसरों से अलग है?



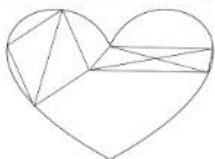
A
A
D
D
C
C
B
B

Not Answered

Q.No: 16 How many triangles are there in the given figure.



दी गई आकृति में कितने त्रिभुज हैं?



9
9
12
12
8
8
10
10

Q.No: 17	<p>Criteria to be selected as Librarian(as on 01-08-2023):</p> <p>Must have a Bachelor's degree in Library Science (B.Lib.Sc) with at least 55% marks.</p> <p>Age must be between 24 and 32 years.</p> <p>Must have basic computer skills.</p> <p>Must possess at least 1 year of experience in a library.</p> <p>Special Clause:</p> <p>If the candidate has no experience but has a Master's in Library Science with 60% marks, refer to Library Director.</p> <p>Case:</p> <p>Neelam is 27 years old, has completed B.Lib.Sc with 58%, holds a Master's in Library Science (62%) but has no experience. She is computer literate.</p> <p>Question: What should be done in Neelam's case?</p> <p>लाइब्रेरियन के रूप में चयन के मानदंड (01-08-2023 तक):</p> <p>लाइब्रेरी साइंस में स्नातक की डिग्री (बी.लिब.एससी) कम से कम 55% अंकों के साथ होनी चाहिए।</p> <p>आयु 24 से 32 वर्ष के बीच होनी चाहिए।</p> <p>बुनियादी कंप्यूटर कौशल होना चाहिए।</p> <p>लाइब्रेरी में कम से कम 1 वर्ष का अनुभव होना चाहिए।</p> <p>विशेष खंड:</p> <p>यदि उम्मीदवार के पास कोई अनुभव नहीं है, लेकिन उसके पास 60% अंकों के साथ लाइब्रेरी साइंस में मास्टर डिग्री है, तो लाइब्रेरी निदेशक से संपर्क करें।</p> <p>मामला:</p> <p>नीलम 27 वर्ष की है, उसने 58% अंकों के साथ बी.लिब.एससी पूरी की है, उसके पास लाइब्रेरी साइंस में मास्टर डिग्री (62%) है, लेकिन उसे कोई अनुभव नहीं है। वह कंप्यूटर साक्षर है।</p> <p>प्रश्न: नीलम के मामले में क्या किया जाना चाहिए?</p>
----------	--

Select the candidate
उम्मीदवार का चयन करें
Refer to Library Director
लाइब्रेरी निदेशक से संपर्क करें
Refer to HR
मानव संसाधन विभाग से संपर्क करें
Reject the candidate
उम्मीदवार को अस्वीकार करें
Not Answered

Q.No: 18

What will come at the place of question mark?

X X X X X	A X X X X	A X X X X Y	Y X X E A	?
-----------------------	-----------------------	-------------	-----------------------	---

प्रश्न चिन्ह के स्थान पर क्या आएगा?

X X X X X	A X X X X	A X X X X Y	Y X X E A	?
-----------------------	-----------------------	-------------	-----------------------	---

Y
U
X
X
E
A

Y
U
X
X
E
A

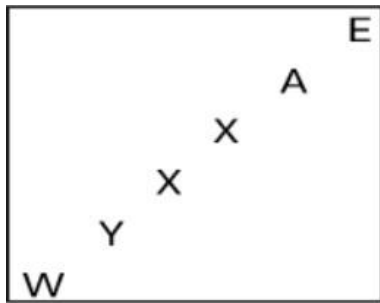
E
A
X
X
T
Y

E
A
X
X
T
Y

Y
X
X
X
E
A

Y
X
X
X
E
A

W Y X X A E



Not Answered

Q.No: 19 In each of the following questions, a specific relationship is given between two words. Identify the word that shares a similar semantic relationship with the given pair. Choose the most appropriate option from the four choices given below.

Knight : Armor :: Astronaut : ?

निम्नलिखित प्रत्येक प्रश्न में दो शब्दों के बीच एक विशिष्ट संबंध दिया गया है। उस शब्द की पहचान कीजिए जो दिए गए युग्म के साथ समान अर्थ संबंध साझा करता है। नीचे दिए गए चार विकल्पों में से सबसे उपयुक्त विकल्प चुनिए।

नाइट : कवच :: अंतरिक्ष यात्री : ?

Jetpack

जेटपैक

Spacesuit

स्पेससूट

Shuttle

शटल

Oxygen Tank

ऑक्सीजन टैंक

Q.No: 20 Find the next term in the given series. 3A, 6C, 13F, 28J, ?

दी गई श्रृंखला में अगला पद ज्ञात कीजिए। 3A, 6C, 13F, 28J, ?

59Q

59Q

56P

56P

54N

54N

62L

62L

Q.No: 21 At a banquet, every 2 people shared a cake, every 6 people shared a bowl of soup, and every 8 people shared a platter of fruit. There were a total of 42 items. How many people were present at the banquet?

एक भोज में, हर 2 लोगों ने एक केक, हर 6 लोगों ने एक सूप का कटोरा और हर 8 लोगों ने एक फल की थाली साझा की। कुल 42 आइटम थे। भोज में कितने लोग मौजूद थे?

30

30

20

20

24

24

28

28

Not Answered

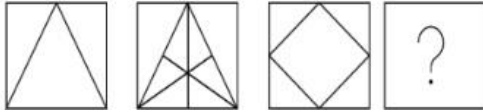
Q.No: 22	<p>Post: Security Guard</p> <p>Eligibility Criteria (as on 01-06-2025):</p> <p>Must be between 25 and 35 years of age.</p> <p>Must have passed 10th standard.</p> <p>Must be physically fit and have no criminal record.</p> <p>Case:</p> <p>Suresh is 29 years old, has passed Class 10, is physically fit, and has no police record.</p> <p>What should be done in Suresh's case?</p> <p>पद: सुरक्षा गार्ड</p> <p>पात्रता मानदंड (01-06-2025 तक):</p> <p>आयु 25 से 35 वर्ष के बीच होनी चाहिए।</p> <p>10वीं कक्षा उत्तीर्ण होना चाहिए।</p> <p>शारीरिक रूप से स्वस्थ होना चाहिए और कोई आपराधिक रिकॉर्ड नहीं होना चाहिए।</p> <p>मामला:</p> <p>सुरेश 29 वर्ष का है, उसने 10वीं कक्षा उत्तीर्ण की है, शारीरिक रूप से स्वस्थ है और उसका कोई पुलिस रिकॉर्ड नहीं है।</p> <p>सुरेश के मामले में क्या किया जाना चाहिए?</p>
	Refer to Police Verification
	पुलिस सत्यापन देखें
	Data incomplete
	डेटा अधूरा
	Select the candidate
	उम्मीदवार का चयन करें
	Reject the candidate
	उम्मीदवार को अस्वीकार करें
	Not Answered

Q.No: 23	<p>In each of the following questions, two numbers are given which follow a certain logical or arithmetic relationship. Identify the same pattern and apply it to find the missing number in the second pair. Choose the correct option from the given alternatives.</p> <p>51728 : 73940 :: 38641 : ?</p> <p>निम्नलिखित प्रत्येक प्रश्न में दो संख्याएँ दी गई हैं जो एक निश्चित तार्किक या अंकगणितीय संबंध का पालन करती हैं। उसी पैटर्न को पहचानिए और दूसरे जोड़े में लुप्त संख्या ज्ञात करने के लिए उसका प्रयोग कीजिए। दिए गए विकल्पों में से सही विकल्प चुनिए।</p> <p>51728 : 73940 :: 38641 : ?</p>
	50863
	50863
	59853
	59853
	50862
	50862
	60974
	60974

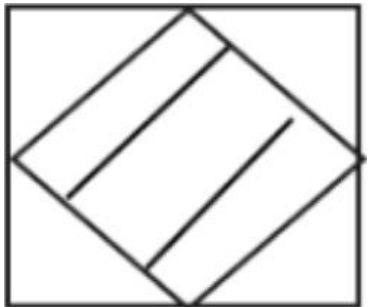

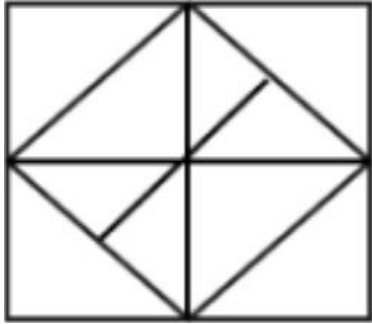
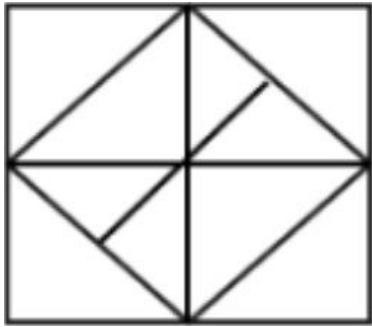
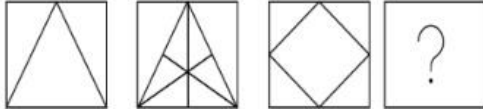
Q.No: 24	<p>Choose the CORRECT option.</p> <p>Address 1: Mr. Rohit Sharma, 123/A, Rose Villa, Green Park, Delhi – 110016</p> <p>Address 2: Mr. R. Sharma, 123-A, Rose Villa, Green Park, New Delhi – 110016</p> <p>Are the two addresses likely to refer to the same person?</p> <p>सही विकल्प चुनें।</p> <p>पता 1: श्री रोहित शर्मा, 123/ए, रोज़ विला, ग्रीन पार्क, दिल्ली – 110016</p> <p>पता 2: श्री आर. शर्मा, 123-ए, रोज़ विला, ग्रीन पार्क, नई दिल्ली – 110016</p> <p>क्या दोनों पते एक ही व्यक्ति को संदर्भित करते हैं?</p>
	No, the cities are different
	नहीं, शहर अलग हैं
	No, the names are different
	नहीं, नाम अलग हैं
	No, the house numbers don't match
	नहीं, घर के नंबर मेल नहीं खाते
	Yes, both addresses are the same
	हाँ, दोनों पते एक ही हैं

Q.No: 25

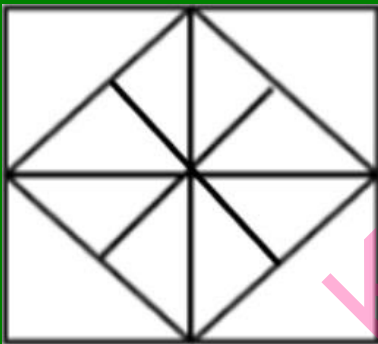
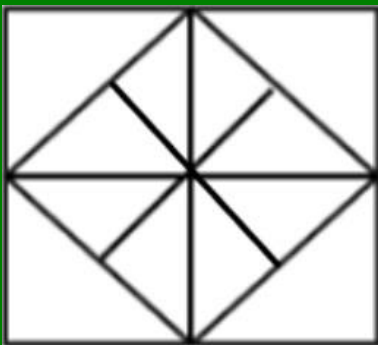
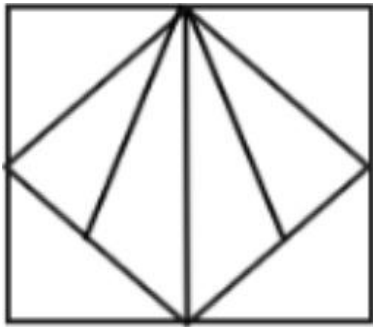
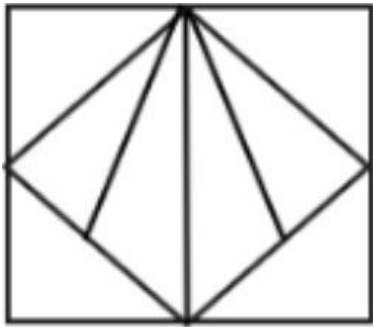
What will come at the place of question mark?



प्रश्न चिन्ह के स्थान पर क्या आएगा?



KD Job Updates



Q.No: 26 Read the information carefully and identify the correct relationship between the persons mentioned in the question.

Rita is the mother of Deepa.

Deepa is the sister of Aman.

Aman is the father of Kabir.

Question: How is Rita related to Kabir?

दी गई जानकारी को ध्यानपूर्वक पढ़ें और प्रश्न में उल्लिखित व्यक्तियों के बीच सही संबंध पहचानें।

रीता, दीपा की माँ है।

दीपा, अमन की बहन है।

अमन, कबीर का पिता है।

प्रश्न: रीता, कबीर से किस प्रकार संबंधित है?

Aunt

चाची

Sister

बहन

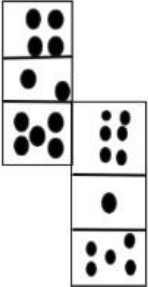
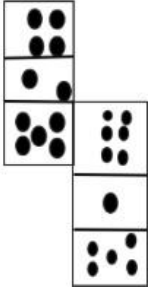
Grandmother

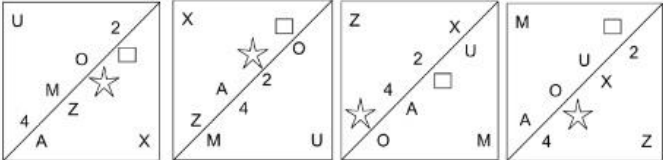
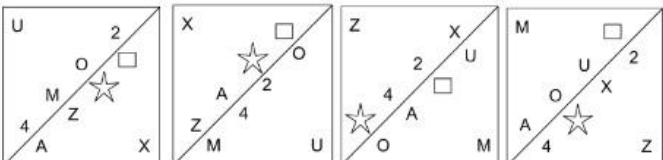
दादी

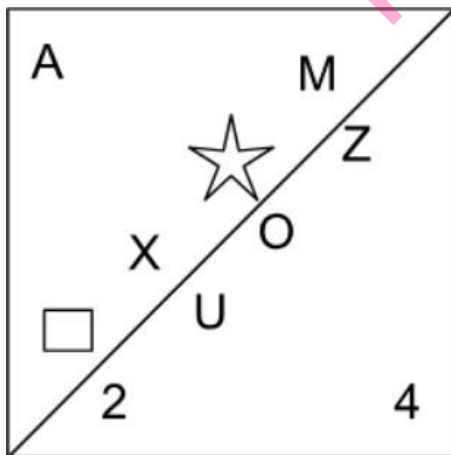
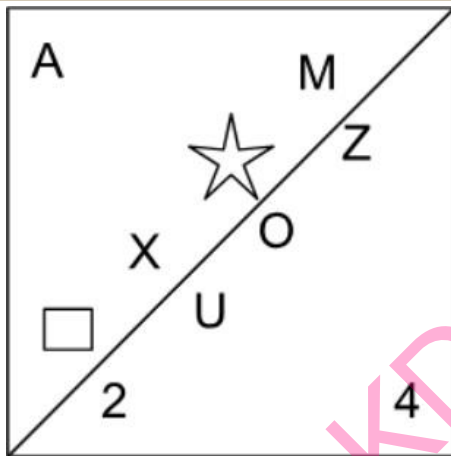
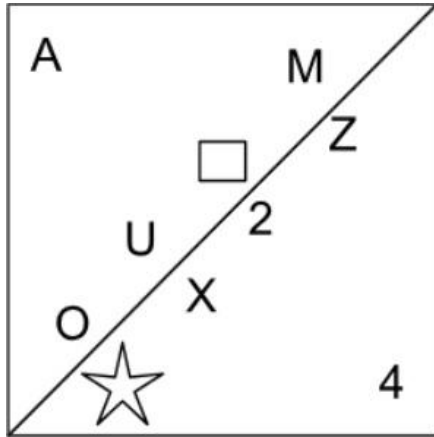
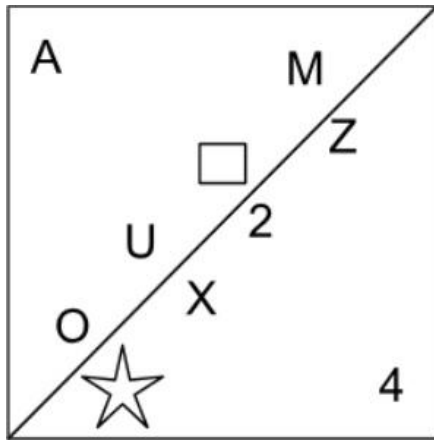
Mother

माँ

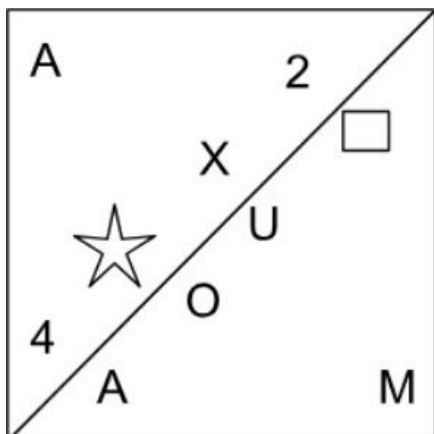
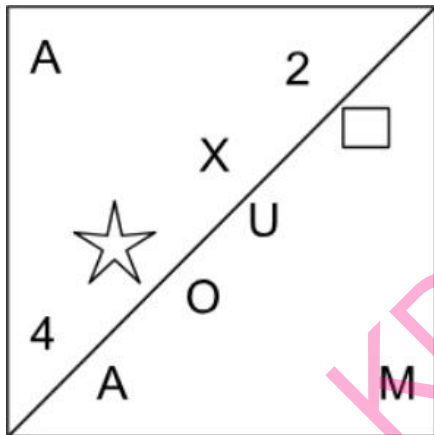
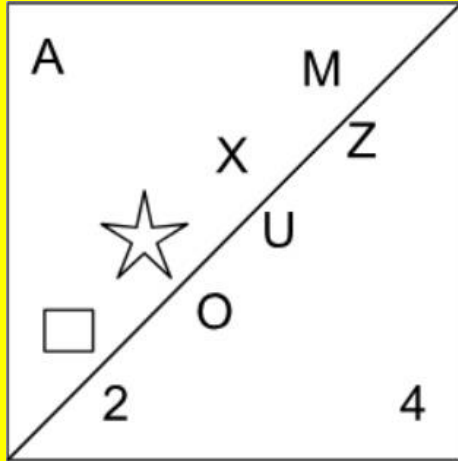
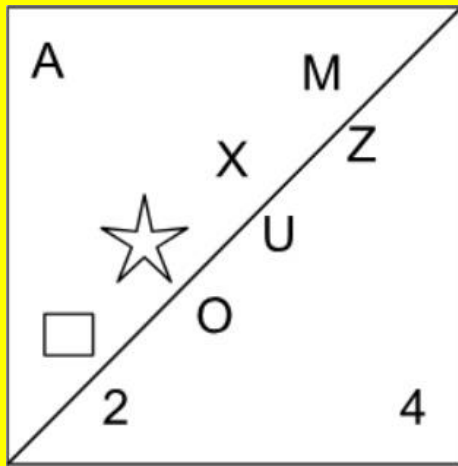
Q.No: 27	<p>If + means \div, \div means -, - means +, and \times means \times then, what is $(200 \div 50 - 10) \times 5 + 25$?</p> <p>यदि + का अर्थ \div, \div का अर्थ -, - का अर्थ + और \times का अर्थ \times है, तो $(200 \div 50 - 10) \times 5 + 25$ क्या है?</p>
32	
32	
34	
34	
36	
36	
30	
30	
Not Answered	

Q.No: 28	<p>How many dots lie opposite to the face having five dots, when the given figure is folded to form a cube?</p>  <p>जब दी गई आकृति को मोड़कर घन बनाया जाता है, तो पांच बिंदुओं वाले फलक के विपरीत कितने बिंदु होते हैं?</p> 
4	
4	
3	
3	
2	
2	
1	
1	

Q.No: 29	<p>Which of the following figures will complete the figural series given below?</p>  <p>निम्नलिखित में से कौन सी आकृति नीचे दी गई आकृति श्रृंखला को पूरा करेगी?</p> 
----------	--



KD Job Updates



Not Answered

Q.No: 30 In each of the following questions, a number series is given. In each series, only one number is incorrect. Identify the wrong number.
1, 4, 9, 16, 26, 36.

निम्नलिखित प्रत्येक प्रश्न में एक संख्या श्रृंखला दी गई है। प्रत्येक श्रृंखला में केवल एक संख्या गलत है। गलत संख्या पहचानिए। **1, 4, 9, 16, 26, 36.**

16
16
4
4
9
9
26
26

Not Answered

Q.No: 31

**Criteria to be selected as Assistant Teacher
Eligibility Criteria (as on 31-03-2024):**

Must have a B.Ed. degree with minimum 50% marks.

Age must be between 25 and 35 years.

Must have 2 years teaching experience.

Must be willing to work in rural schools.

Special Rule:

If candidate has 1 year teaching experience but a Master's in Education, refer to Vice Principal.

Case:

Sonal is 28 years old with a B.Ed. (55%), a Master's in Education, and 1 year experience. She agrees to work in rural areas.

What should be done in Sonal's case?

सहायक शिक्षक के रूप में चयन हेतु मानदंड

पात्रता मानदंड (31-03-2024 तक):

न्यूनतम 50% अंकों के साथ बी.एड. की डिग्री होनी चाहिए।

आयु 25 से 35 वर्ष के बीच होनी चाहिए।

2 वर्ष का शिक्षण अनुभव होना चाहिए।

ग्रामीण विद्यालयों में कार्य करने के लिए इच्छुक होना चाहिए।

विशेष नियम:

यदि उम्मीदवार के पास 1 वर्ष का शिक्षण अनुभव है, लेकिन शिक्षा में स्नातकोत्तर है, तो उप-प्राचार्य से संपर्क करें।

मामला:

सोनल 28 वर्ष की है और उसके पास बी.एड. (55%), शिक्षा में स्नातकोत्तर और 1 वर्ष का अनुभव है। वह ग्रामीण क्षेत्रों में कार्य करने के लिए सहमत है।

सोनल के मामले में क्या किया जाना चाहिए?

Reject the candidate

उम्मीदवार को अस्वीकार करें

Refer to Vice Principal

उप प्रधानाचार्य से संपर्क करें

Case cannot be considered

मामले पर विचार नहीं किया जा सकता

Select the candidate

उम्मीदवार का चयन करें

Not Answered

Q.No: 32

If a dice has numbers 1 to 6 on its faces and face 1 is opposite to 6, 3 is opposite to 4, then what will be the number on the face opposite to the face showing '2'?

अगर एक पासे के फलकों पर 1 से 6 तक की संख्याएँ हैं और फलक 1, 6 के विपरीत है, 3, 4 के विपरीत है, तो '2' दर्शाने वाले फलक के विपरीत फलक पर संख्या क्या होगी?

3
3
5
5
4
4
6
6

Q.No: 33

3, 7, 11, 15, 19, 22 - which is the odd one out?

3, 7, 11, 15, 19, 22 - इनमें से कौन सा विषम है?

7
7

22

22

15

15

3

3

Q.No: 34 In each of the following questions, a specific pattern is followed for both the letters and the numbers. Identify the set of numbers that correctly fills the blanks in the given sequence. **C, 6, F, 24, I, 54, L, __, O, __, R, 216, U, 294, X, 384**

निम्नलिखित प्रत्येक प्रश्न में, अक्षरों और संख्याओं दोनों के लिए एक विशिष्ट पैटर्न दिया गया है। दिए गए क्रम में रिक्त स्थानों को सही ढंग से भरने वाले संख्याओं के समूह को पहचानिए।

C, 6, F, 24, I, 54, L, __, O, __, R, 216, U, 294, X, 384

(90, 145)

(90, 145)

(132, 210)

(132, 210)

(140, 220)

(140, 220)

(96, 150)

(96, 150)

Not Answered

Q.No: 35 Among the given figures, identify the one that does not belong to the group based on the pattern.



A

B

C

D

दी गई आकृतियों में से उस आकृति को पहचानिए जो पैटर्न के आधार पर समूह से संबंधित नहीं है।



A

B

C

D

B

B

D

D

C

C

A

A

Q.No: 36 Complete the analogy: CAB : EDC :: ONM : ?

सादृश्य पूरा करें: CAB : EDC :: ONM : ?

TSR

TSR

QPO

QPO

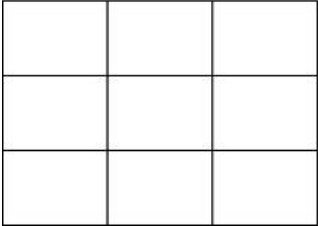
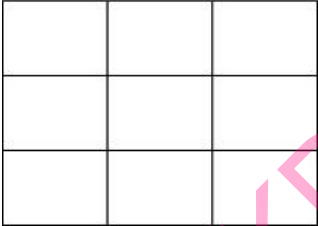
RQP

RQP

QON

QON



Q.No: 37	<p>Read the situation and choose the best judgment:</p> <p>You've just finished eating at a busy restaurant and pay for your meal with cash. As the server hands you the change, you notice they have mistakenly given you significantly more money back than you were owed. The server seems overwhelmed and rushes to attend to another table.</p> <p>Question: Given this situation, which of the following is the most ethical and responsible action?</p> <p>स्थिति को समझें और सबसे अच्छा निर्णय चुनें:</p> <p>आपने अभी-अभी एक व्यस्त रेस्टोरेंट में खाना खाया है और नकद भुगतान किया है। जैसे ही सर्वर आपको बकाया पैसे देता है, आप देखते हैं कि उन्होंने गलती से आपको बकाया राशि से कहीं ज्यादा पैसे वापस कर दिए हैं। सर्वर बहुत परेशान लगता है और जल्दी से दूसरी टेबल पर चला जाता है।</p> <p>प्रश्न: इस स्थिति में, निम्नलिखित में से कौन सा सबसे नैतिक और ज़िम्मेदाराना कदम है?</p> <p>Politely get the server's attention, point out the mistake, and return the excess change.</p> <p>विनम्रतापूर्वक सर्वर का ध्यान आकर्षित करें, गलती बताएं, और अतिरिक्त राशि लौटा दें।</p> <p>Quietly leave the exact amount of the overpayment on the table as an extra tip.</p> <p>अतिरिक्त भुगतान की सही राशि चुपचाप मेज पर अतिरिक्त टिप के रूप में छोड़ दें।</p> <p>Announce loudly that the server made a mistake with your change, so others are aware.</p> <p>जोर से घोषणा करें कि सर्वर ने आपके बदलाव में गलती की है, ताकि अन्य लोग जान सकें।</p> <p>Discreetly put the extra change in your pocket and leave, assuming it's the restaurant's mistake.</p> <p>सावधानी से अतिरिक्त पैसे अपनी जेब में रखें और यह मानकर चले जाएं कि यह रेस्तरां की गलती है।</p>
----------	--

Q.No: 38	<p>In this figure, how many squares are there?</p>  <p>इस आकृति में कितने वर्ग हैं?</p>  <p>9</p> <p>9</p> <p>30</p> <p>30</p> <p>36</p> <p>36</p> <p>14</p> <p>14</p>
----------	---


Q.No: 39	<p>Which word is different from the rest?</p> <p>कौन सा शब्द बाकी से अलग है?</p> <p>Gun</p> <p>बंदूक</p> <p>Spoon</p> <p>चम्मच</p> <p>Knife</p> <p>चाकू</p> <p>Sword</p> <p>तलवार</p>
----------	---

Q.No: 40	<p>In each of the following questions, a specific relationship is given between two words. Identify the word that shares a similar semantic relationship with the given pair. Choose the most appropriate option from the four choices given below.</p> <p>Fire : Heat :: Friction : ?</p> <p>निम्नलिखित प्रत्येक प्रश्न में दो शब्दों के बीच एक विशिष्ट संबंध दिया गया है। उस शब्द की पहचान कीजिए जो दिए गए युग्म के साथ समान अर्थ संबंध साझा करता है। नीचे दिए गए चार विकल्पों में से सबसे उपयुक्त विकल्प चुनिए।</p> <p>आग : ऊष्मा :: घर्षण : ?</p>
Temperature	
तापमान	
Motion	
गति	
Burn	
जलाना	
Energy	
ऊर्जा	


Q.No: 41	<p>If $\triangle : 3 :: \square : ?$</p> <p>अगर $\triangle : 3 :: \square : ?$</p>
5	
5	
6	
6	
7	
7	
4	
4	

Q.No: 42	<p>In the given sequence what is the missing shape?</p>  <p>दिए गए अनुक्रम में लुप्त आकृति कौन सी है?</p> 
----------	--





KD Job Updates



KD Job Updates

Q.No: 43 In each of the following questions, two numbers are given which follow a certain logical or arithmetic relationship. Identify the same pattern and apply it to find the missing number in the second pair. Choose the correct option from the given alternatives.

25 : 30 :: 36 : ?

निम्नलिखित प्रत्येक प्रश्न में दो संख्याएँ दी गई हैं जो एक निश्चित तार्किक या अंकगणितीय संबंध का पालन करती हैं। उसी पैटर्न को पहचानिए और दूसरे जोड़े में लुप्त संख्या ज्ञात करने के लिए उसका प्रयोग कीजिए। दिए गए विकल्पों में से सही विकल्प चुनिए।

25 : 30 :: 36 : ?

43

43

42

42

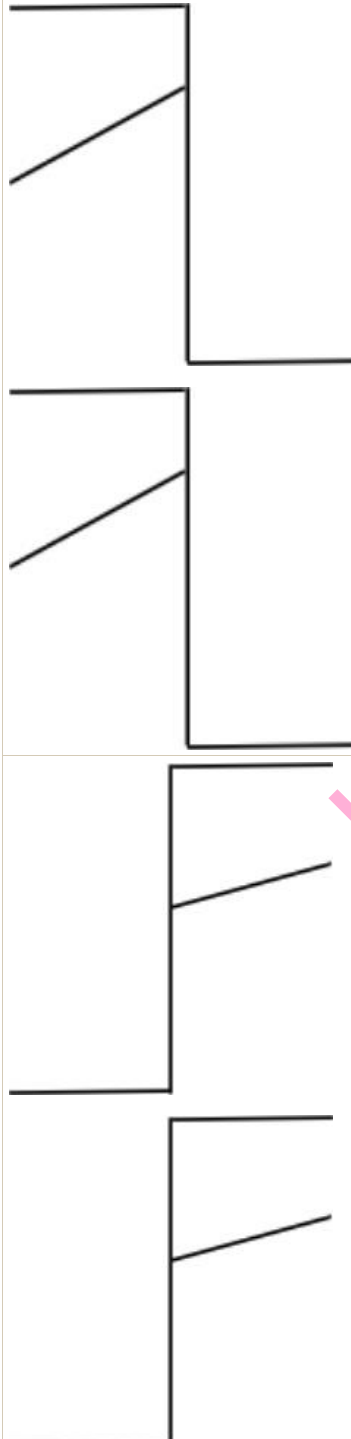
41

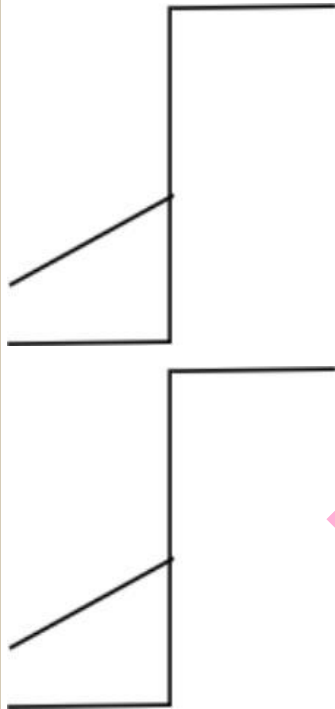
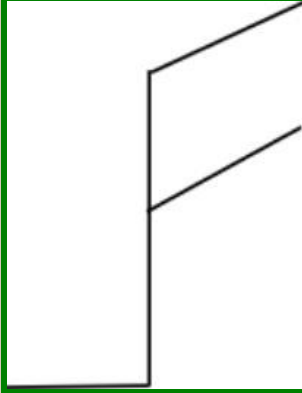
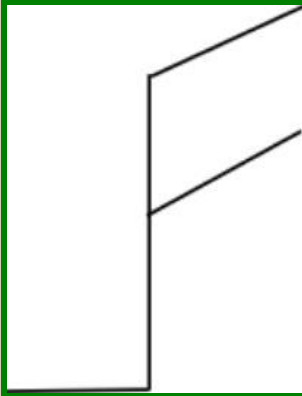
41

46

46

Q.No: 44	<p>If: $2 \times 3 = 13$ $4 \times 5 = 41$ $6 \times 7 = ?$</p> <p>अगर: $2 \times 3 = 13$, $4 \times 5 = 41$, $6 \times 7 = ?$</p>
83	
83	
89	
89	
87	
87	
85	
85	
Not Answered	

Q.No: 45	<p>Choose the figure which is different from the rest?</p> <p>वह आकृति चुनें जो बाकी से अलग है?</p>
	
KD Job Updates	



KD Job Updates

Q.No: 46 In each of the following questions, a specific relationship is given between two words. Identify the word that shares a similar semantic relationship with the given pair. Choose the most appropriate option from the four choices given below.

Theory : Practice :: Hypothesis : ?

निम्नलिखित प्रत्येक प्रश्न में दो शब्दों के बीच एक विशिष्ट संबंध दिया गया है। उस शब्द की पहचान कीजिए जो दिए गए युग्म के साथ समान अर्थ संबंध साझा करता है। नीचे दिए गए चार विकल्पों में से सबसे उपयुक्त विकल्प चुनिए।

सिद्धांत : अभ्यास :: परिकल्पना : ?

Observation

अवलोकन

Result

परिणाम

Experiment

प्रयोग

Proof

Q.No: 47 If $4x + 5y = 33$ and $3x - 2y = 14$ what is $x - y$?
यदि $4x + 5y = 33$ और $3x - 2y = 14$ है तो $x - y$ क्या है?

4

4

1

1

3

3

2

2

Not Answered

Q.No: 48 Address A: Riya Kapoor, 7/2, Lake View Road, Kolkata – 700029
Address B: R. Kapoor, 7/2A, Lake View Rd, Kolkata – 700029
What is the most significant difference between the two addresses?
पता A: रिया कपूर, 7/2, लेक व्यू रोड, कोलकाता – 700029
पता B: आर. कपूर, 7/2A, लेक व्यू रोड, कोलकाता – 700029
दोनों पत्तों के बीच सबसे महत्वपूर्ण अंतर क्या है?

Different road

अलग सड़क

Different house number

अलग मकान का नंबर

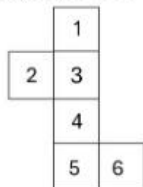
Different surname

अलग उपनाम

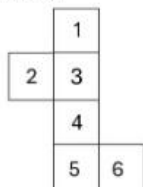
Different city

अलग शहर

Q.No: 49 An unfolded box (cube or cuboid) appeared as shown in the figure, when sheet is folded to form a box. find the number on the face opposite to 5.



जब शीट को मोड़कर बॉक्स बनाया जाता है तो एक खुला बॉक्स (घन या घनाभ) आकृति में दिखाए अनुसार दिखाई देता है। 5 के विपरीत फलक पर संख्या ज्ञात कीजिए।



4

4

1

1

2

2

2

2

2

Q.No: 50 A squash championship has 111 participants. In a knockout format, what is the total number of matches played?
एक स्क्वैश चैंपियनशिप में 111 प्रतिभागी हैं। नॉकआउट प्रारूप में, खेले जाने वाले मैचों की कुल संख्या कितनी है?

110
110
109
109
111
111
112
112
Not Answered

PART - B (General Awareness)

Q.No: 51	Which Indian woman was the pioneer in winning a silver medal at the Olympic Games? ओलंपिक खेलों में रजत पदक जीतने वाली पहली भारतीय महिला खिलाड़ी कौन थीं?
Saina Nehwal	
सायना नेहवाल	
Karnam Malleswari	
कर्णम मल्लेश्वरी	
Mary Kom	
मेरी कॉम	
P.V. Sindhu	
पी. वी. सिंधु	
Not Answered	

Q.No: 52

Match the columns:

Column A (Land-Use Category)	Column B (Description – Shuffled)
A. Miscellaneous Tree Crops & Groves	1. Land left fallow for more than 1 year but less than 5 years
B. Culturable Wasteland	2. Privately owned land under orchards and fruit trees
C. Current Fallow	3. Land left uncultivated for over 5 years
D. Fallow other than Current Fallow	4. Land left fallow for one or less than one year

स्तंभों का मिलान करें:

स्तंभ A (भूमि-उपयोग श्रेणी)	स्तंभ B (विवरण - फेरबदल)
A. विविध वृक्ष फसलें और उपवन	1. 1 वर्ष से अधिक लेकिन 5 वर्ष से कम समय के लिए बंजर छोड़ी गई भूमि
B. खेती योग्य बंजर भूमि	2. बागों और फलों के पेड़ों के नीचे निजी स्वामित्व वाली भूमि
C. वर्तमान बंजर भूमि	3. 5 वर्ष से अधिक समय तक बिना खेती के छोड़ी गई भूमि
D. वर्तमान बंजर भूमि के अलावा अन्य बंजर भूमि	4. एक वर्ष या उससे कम समय के लिए बंजर छोड़ी गई भूमि

A-2, B-3, C-4, D-1

A-2, B-3, C-4, D-1

A-3, B-2, C-1, D-4

A-3, B-2, C-1, D-4

A-1, B-4, C-2, D-3

A-1, B-4, C-2, D-3

A-4, B-1, C-3, D-2

A-4, B-1, C-3, D-2

Not Answered

Q.No: 53 Which of the following factors contributes to the low child sex ratio in some economically developed Northern states of India?

- 1) Increased accessibility to prenatal sex-determination methods
- 2) High levels of female literacy and empowerment
- 3) Societal preference for male children in inheritance and family support
- 4) Strengthened enforcement of gender-equal policies

निम्नलिखित में से कौन सा कारक भारत के कुछ आर्थिक रूप से विकसित उत्तरी राज्यों में कम बाल लिंग अनुपात में योगदान देता है?

- 1) जन्मपूर्व लिंग निर्धारण विधियों तक पहुँच में वृद्धि
- 2) महिला साक्षरता और सशक्तिकरण का उच्च स्तर
- 3) विरासत और पारिवारिक सहायता में पुरुष बच्चों के लिए सामाजिक वरीयता
- 4) लिंग-समान नीतियों का सुदृढ़ प्रवर्तन

2 and 3

2 और 3

2 and 4

2 और 4

1 and 3

1 और 3

1 and 4

1 और 4

Not Answered

Q.No: 54 Sattriya, one of the classical dances of India, was introduced by which saint?

भारत के शास्त्रीय नृत्यों में से सत्रिया नृत्य की शुरुआत किस संत ने की थी?

Sankardev

शंकरदेव

Chaitanya Mahaprabhu

चैतन्य महाप्रभु

Kabir

कबीर

Tulsidas

तुलसीदास

Not Answered

Q.No: 55 How did India's trade policy reforms post-1991 impact the import of capital goods?

1991 के बाद भारत के व्यापार नीति सुधारों ने पूंजीगत वस्तुओं के आयात को किस प्रकार प्रभावित किया?

Linked capital imports only to foreign companies

केवल विदेशी कंपनियों से जुड़े पूंजीगत आयात

Reduced tariffs and removed licensing

टैरिफ कम कर दिए गए और लाइसेंसिंग हटा दी गई

Imposed import quotas on machinery

मशीनरी पर आयात कोटा लगाया गया

Banned all capital imports

सभी पूंजीगत आयातों पर प्रतिबंध लगा दिया गया

Q.No: 56 Who was the first woman to be the president of the Indian National Congress?

भारतीय राष्ट्रीय कांग्रेस की अध्यक्ष बनने वाली पहली महिला कौन थीं?

Kasturba Gandhi

कस्तूरबा गांधी

Kamala Nehru

कमला नेहरू

Annie Besant

एनी बेसेंट

Sarojini Naidu

सरोजिनी नायडू

Q.No: 57 Which of the following is a benefit of measuring happiness in a country?

निम्नलिखित में से कौन-सा किसी देश में 'सुख' मापने का एक लाभ है?

Tracking crime rates

अपराध दर की निगरानी

Improving economic statistics only

केवल आर्थिक आंकड़ों में सुधार

Understanding citizens' mental and emotional well-being

नागरिकों की मानसिक एवं भावनात्मक भलाई को समझना

Predicting election results

चुनाव परिणामों की भविष्यवाणी

Q.No: 58 In which year did Toni Morrison become the first African-American woman to win the Nobel Prize in Literature?

टोनी मॉरिसन किस वर्ष साहित्य में नोबेल पुरस्कार जीतने वाली पहली अफ्रीकी-अमेरिकी महिला बनीं?

1991

1991

1995

1995

1993

1993

1987

1987

Not Answered

Q.No: 59 According to Section 21 of the Bharatiya Nagarik Suraksha Sanhita, 2023, which of the following statements is **correct** regarding the trial of offences under Sections 64 to 71 of the Bharatiya Nyaya Sanhita, 2023?

भारतीय नागरिक सुरक्षा संहिता, 2023 की धारा 21 के अनुसार, भारतीय न्याय संहिता, 2023 की धारा 64 से 71 के तहत अपराधों के परीक्षण के संबंध में निम्नलिखित में से कौन सा कथन सही है?

The trial must be conducted by any police officer of the rank of DSP and above.

मुकदमा डीएसपी या उससे ऊपर के रैंक के किसी भी पुलिस अधिकारी द्वारा चलाया जाना चाहिए।

These offences must be tried only in a High Court under a male judge.

इन अपराधों की सुनवाई केवल उच्च न्यायालय में पुरुष न्यायाधीश के अधीन ही की जानी चाहिए।

Such offences are exclusively triable by Executive Magistrates.

ऐसे अपराधों का परीक्षण विशेष रूप से कार्यपालक मजिस्ट्रेट द्वारा किया जा सकता है।

These offences shall, as far as practicable, be tried by a court presided over by a woman.

इन अपराधों की सुनवाई, जहां तक संभव हो, महिला की अध्यक्षता वाली अदालत द्वारा की जाएगी।

Not Answered

Q.No: 60 Match the column:

Column A (Status Category)	Column B (Public Sector Enterprise)
A. Maharatna	1. Mahanagar Telephone Nigam Limited
B. Navratna	2. Indian Railway Catering and Tourism Corporation
C. Miniratna	3. Steel Authority of India Limited

स्तंभ का मिलान करें:

कॉलम A (स्थिति श्रेणी)	कॉलम B (सार्वजनिक क्षेत्र उद्यम)
A. महारत्न	1. महानगर टेलीफोन निगम लिमिटेड
B. नवरत्न	2. भारतीय रेलवे खानपान एवं पर्यटन निगम
C. मिनीरत्न	3. स्टील अथॉरिटी ऑफ इंडिया लिमिटेड

A-1, B-2, C-3

A-1, B-2, C-3

A-2, B-3, C-1

A-2, B-3, C-1

A-3, B-1, C-2

A-3, B-1, C-2

A-1, B-3, C-2

A-1, B-3, C-2

Q.No: 61 Bihu is a folk music and dance form associated with which Indian state?

बिहू लोक संगीत और नृत्य का पारंपरिक रूप भारत के किस राज्य से जुड़ा हुआ है?

Kerala

केरल

Gujarat

गुजरात

Assam

असम

Punjab

पंजाब

Q.No: 62 What is used to measure the health dimension in HDI?

मानव विकास सूचकांक में स्वास्थ्य आयाम को मापने के लिए किसका उपयोग किया जाता है?

Life expectancy at birth

जन्म पर जीवन प्रत्याशा

Infant mortality rate

शिशु मृत्यु दर

Access to clean water

स्वच्छ जल तक पहुंच

Nutritional status

पोषक तत्वों का स्तर

Not Answered

Q.No: 63 Bihu, the festival of Assam, is celebrated to mark:

असम में मनाया जाने वाला बिहू पर्व किस अवसर पर आयोजित किया जाता है?

The winter solstice

शीत अयनांत (विंटर सोल्सटाइस)

The new harvest

नई फसल का स्वागत

The victory of good over evil

अच्छाई की बुराई पर विजय

The end of the monsoon

मानसून की समाप्ति

Not Answered

Q.No: 64 Where was the National Cadets Judo Championships 2024-25 held?

राष्ट्रीय कैडेट्स जूडो चैंपियनशिप 2024-25 कहाँ आयोजित की गई?

Odisha

ओडिशा

Delhi

दिल्ली

Maharashtra

महाराष्ट्र

Goa

गोवा

Not Answered

Q.No: 65 Read the following statements carefully:

Statement I: A pressure cooker operates by decreasing the pressure inside, which lowers the boiling point of water.

Statement II: Food cooks faster in a pressure cooker because the higher pressure allows water to boil at a temperature above 100°C.

Statement III: The superheated steam within the cooker increases the rate of heat transfer to the food, leading to faster cooking.

Which of the statements given above is/are correct?

निम्नलिखित कथनों को ध्यानपूर्वक पढ़ें:

कथन I: प्रेशर कुकर अंदर के दाब को कम करके काम करता है, जिससे पानी का क्वथनांक कम हो जाता है।

कथन II: प्रेशर कुकर में खाना तेज़ी से पकता है क्योंकि उच्च दाब पानी को 100°C से अधिक तापमान पर उबलने देता है।

कथन III: कुकर के अंदर की अति-तापित भाप भोजन में ऊष्मा स्थानांतरण की दर को बढ़ा देती है, जिससे खाना तेज़ी से पकता है।

ऊपर दिए गए कथनों में से कौन सा/से सही है/हैं?

Only II and III are correct

केवल II और III सही हैं

All I, II, and III are correct

सभी I, II और III सही हैं

Only I and II are correct

केवल I और II सही हैं

Only I and III are correct

केवल I और III सही हैं

Not Answered

Q.No: 66 What is the name of the satellite launched by ISRO's GSLV-F09 that was a gift to SAARC nations?

इसरो के जीएसएलवी-एफ09 द्वारा प्रक्षेपित उपग्रह का नाम क्या है जो सार्क(SAARC) देशों को उपहार था?

GSAT-9

जीसैट-9

GSAT-19

जीसैट-19

INSAT-3DR

इनसैट-3डीआर

IRNSS-1G

आईआरएनएसएस-1जी

Not Answered

Q.No: 67	Which of the following is NOT TRUE about Tribhuvandas Patel? त्रिभुवनदास पटेल के बारे में निम्नलिखित में से कौन सा कथन सही नहीं है?
He was the founder of the Kaira Milk Union (Amul). वह कैरा मिल्क यूनियन (अमूल) के संस्थापक थे। Lok Sabha has passed a bill to setup Tribhuvan Sahkari University in Gujarat. लोकसभा ने गुजरात में त्रिभुवन सहकारी विश्वविद्यालय स्थापित करने के लिए एक बिल पारित कर दिया है। He was awarded Padma Vibhushan for his social service. उनकी समाज सेवा के लिए उन्हें पद्म विभूषण से सम्मानित किया गया था। He was awarded Ramon Magsaysay award for community leadership. उन्हें सामुदायिक नेतृत्व के लिए रेमन मैग्सेसे पुरस्कार से सम्मानित किया गया।	
Not Answered	

Q.No: 68	How did the administrative roles of rajas differ from those of zamindars under the Mughal system मुगल शासन व्यवस्था में राजाओं की प्रशासनिक भूमिकाएं जमींदारों से किस प्रकार भिन्न थीं?
Zamindars were subordinate tax officers under the rajas, appointed directly by the emperor. जमींदार राजाओं के अधीन अधीनस्थ कर अधिकारी होते थे, जिन्हें सम्राट द्वारा सीधे नियुक्त किया जाता था। Rajas and zamindars performed identical roles but differed in their religious affiliations. राजा और जमींदार एक जैसी भूमिका निभाते थे, लेकिन उनकी धार्मिक मान्यताएं भिन्न थीं। Rajas governed broader regions and held a higher status, while zamindars primarily managed land revenue collection. राजा व्यापक क्षेत्रों पर शासन करते थे और उच्च दर्जा रखते थे, जबकि जमींदार मुख्य रूप से भूमि राजस्व संग्रह का प्रबंधन करते थे। Zamindars exercised complete political control, whereas rajas held only ceremonial titles. जमींदारों के पास पूर्ण राजनीतिक नियंत्रण था, जबकि राजाओं के पास केवल औपचारिक उपाधियाँ थीं।	
Not Answered	

Q.No: 69	Read the following statements and choose the correct option: Statement 1: Karnataka has the highest elephant population among Southern States. Statement 2: A high number of juvenile elephant deaths in Karnataka are due to Elephant Endotheliotropic Herpesvirus (EEHV). निम्नलिखित कथनों को पढ़ें और सही विकल्प चुनें: कथन 1: दक्षिणी राज्यों में कर्नाटक में हाथियों की संख्या सबसे अधिक है। कथन 2: कर्नाटक में किशोर हाथियों की मृत्यु का एक बड़ा कारण एलिफेंट एंडोथेलियोट्रोपिक हर्पीसवायरस (EEHV) है।
Only Statement 1 is correct केवल कथन 1 सही है Only Statement 2 is correct केवल कथन 2 सही है Both Statements 1 and 2 are correct कथन 1 और 2 दोनों सही हैं Neither Statement 1 nor 2 is correct न तो कथन 1 और न ही 2 सही है	
Not Answered	

Q.No: 70	In the lac operon model, what is the primary role of the allolactose molecule? लैक ऑपेरॉन मॉडल में एलोलैक्टोज अणु की मुख्य भूमिका क्या होती है?
It functions as an inducer, binding to the repressor protein and inactivating it. यह एक प्रेरक के रूप में कार्य करता है, रिप्रेसर प्रोटीन से जुड़कर उसे निष्क्रिय कर देता है। It acts as a corepressor, binding with the repressor protein. यह एक को-रिप्रेसर के रूप में कार्य करता है और रिप्रेसर प्रोटीन से जुड़ता है। It binds to the promoter to initiate transcription. यह प्रमोटर से जुड़कर लिप्यांकन आरंभ करता है। It directly codes for the enzymes involved in lactose metabolism. यह सीधे लैक्टोज चयापचय में शामिल एंजाइमों का कोडन प्रदान करता है।	
Not Answered	

Q.No: 71 Match Column A (Denudational Processes) with Column B (Their Driving Forces/Energy):

Column A (Denudational Processes)	Column B (Their Driving Forces/Energy)
A. Weathering	1. kinetic Energy
B. Mass Movement	2.Gravitational / Molecular Stresses /Chemical Actions
C. Erosion and Transportation	3. Gravitational Force
D. Denudation (overall process)	4. External Forces acting on Earth surface

स्तम्भ A (विनाशकारी प्रक्रियाएँ) को स्तम्भ B (उनकी प्रेरक शक्तियाँ/ऊर्जा) से सुमेलित करें:

स्तंभ ए(विनाशात्मक प्रक्रियाएं)	स्तंभ बी (उनकी प्रेरक शक्तियाँ/ऊर्जा)
ए. अपक्षय	1. गतिज ऊर्जा
बी. जन आंदोलन	2.गुरुत्वाकर्षण / आणविक तनाव / रासायनिक क्रियाएं
सी. कटाव और परिवहन	3. गुरुत्वाकर्षण बल
डी. अनाच्छादन (समग्र प्रक्रिया)	4. पृथ्वी की सतह पर कार्य करने वाले बाह्य बल

A-2, B-3, C-1, D-4

ए-2, बी-3, सी-1, डी-4

A-2, B-1, C-3, D-4

ए-2, बी-1, सी-3, डी-4

A-4, B-3, C-2, D-1

ए-4, बी-3, सी-2, डी-1

A-1, B-2, C-3, D-4

ए-1, बी-2, सी-3, डी-4

Not Answered

Q.No: 72 Which entities are eligible to register under the FCRA?

विदेशी अंशदान (विनियमन) अधिनियम (FCRA) के अंतर्गत किन संस्थाओं को पंजीकरण की पात्रता प्राप्त है?

Political parties

राजनीतिक दल

Government departments

सरकारी विभाग

Only private companies

केवल निजी कंपनियाँ

Section 8 companies, trusts, and societies

धारा 8 कंपनियाँ, ट्रस्ट और समितियाँ

Not Answered

Q.No: 73 What evidence supports the Big Bang theory of universe origin?

ब्रह्मांड की उत्पत्ति के बिग बैंग सिद्धांत का समर्थन कौन सा साक्ष्य करता है?

Sunspot cycles

सूर्य कलंक चक्र

Redshift of galaxies

आकाशगंगाओं का लाल विस्थापन

Solar wind

सौर पवन

Volcanic eruptions on Earth

पृथ्वी पर ज्वालामुखी विस्फोट

Q.No: 74 Who was the Chairman of the "Advisory Committee on Fundamental Rights, Minorities, and Tribal and Excluded Areas" in the Constituent Assembly?

संविधान सभा में "मौलिक अधिकार, अल्पसंख्यक तथा जनजातीय एवं बहिष्कृत क्षेत्रों संबंधी सलाहकार समिति" के अध्यक्ष कौन थे?

Sardar Vallabhbhai Patel

सरदार वल्लभभाई पटेल

Jawaharlal Nehru

जवाहरलाल नेहरू

K.M. Munshi

के.एम. मुंशी

Dr. B.R. Ambedkar

डॉ. बी.आर. अम्बेडकर

Q.No: 75 Match the following Schedules of the Indian Constitution with their respective features:

Column A (Schedule)	Column B (Feature)
1. First Schedule	a. Allocation of powers and responsibilities between Union and States
2. Third Schedule	b. Forms of Oaths or Affirmations
3. Fifth Schedule	c. Administration and control of Scheduled Areas and Tribes (excluding NE states)
4. Seventh Schedule	d. Names of the States and Union Territories and their territorial jurisdiction

भारतीय संविधान की निम्नलिखित अनुसूचियों का उनकी संबंधित विशेषताओं से मिलान कीजिए:

स्तंभ A (अनुसूची)	स्तंभ B (विशेषता)
1. प्रथम अनुसूची	a. संघ और राज्यों के बीच शक्तियों और उत्तरदायित्वों का आबंटन
2. तृतीय अनुसूची	b. शपथ या प्रतिज्ञान के प्रकार
3. पाँचवीं अनुसूची	c. अनुसूचित क्षेत्रों और जनजातियों का प्रशासन और नियंत्रण (पूर्वोत्तर राज्यों को छोड़कर)
4. सातवीं अनुसूची	d. राज्यों और केंद्र शासित प्रदेशों के नाम और उनका क्षेत्रीय अधिकार क्षेत्र

1-b, 2-d, 3-a, 4-c

1-b, 2-d, 3-a, 4-c

1-a, 2-c, 3-b, 4-d

1-a, 2-c, 3-b, 4-d

1-c, 2-a, 3-d, 4-b

1-c, 2-a, 3-d, 4-b

1-d, 2-b, 3-c, 4-a

1-d, 2-b, 3-c, 4-a

Q.No: 76	<p>Consider the following statements comparing the Simon Commission (1927) and the Nehru Report (1928):</p> <ol style="list-style-type: none"> 1. The Simon Commission was boycotted by Indian political parties primarily due to its all-Indian composition. 2. The Nehru Report proposed complete independence for India as its immediate objective. <p>Which of the above is/are correct?</p> <p>साइमन कमीशन (1927) और नेहरू रिपोर्ट (1928) की तुलना करते हुए निम्नलिखित कथनों पर विचार कीजिए:</p> <ol style="list-style-type: none"> 1. साइमन कमीशन का भारतीय राजनीतिक दलों द्वारा मुख्यतः इसके अखिल भारतीय स्वरूप के कारण बहिष्कार किया गया था। 2. नेहरू रिपोर्ट ने भारत के लिए पूर्ण स्वतंत्रता को अपने तात्कालिक उद्देश्य के रूप में प्रस्तावित किया था। <p>उपर्युक्त में से कौन सा/से सही है/हैं?</p>
	Neither 1 nor 2
	न तो 1 और न ही 2
	1 only
	केवल 1
	2 only
	केवल 2
	Both 1 and 2
	1 और 2 दोनों

Q.No: 77	<p>Name the state in which The Bhitarkanika Mangroves are located?</p> <p>भीतरकनिका मैन्ग्रोव वन किस राज्य में स्थित हैं?</p>
	Odisha
	ओडिशा
	Andhra Pradesh
	आंध्र प्रदेश
	Tamil Nadu
	तमिलनाडु
	West Bengal
	पश्चिम बंगाल
	Not Answered

Q.No: 78	<p>Which of the following pairs is correctly matched?</p> <p>निम्नलिखित में से कौन सा युग्म सही सुमेलित है?</p>
	Mission Shakti – Startup grants for rural men
	मिशन शक्ति - ग्रामीण पुरुषों के लिए स्टार्टअप अनुदान
	PM-AAGY – Railway safety in backward areas
	पीएम-एएजीवाई - पिछड़े क्षेत्रों में रेलवे सुरक्षा
	Swadesh Darshan 2.0 – Theme-based tourism circuits
	स्वदेश दर्शन 2.0 – थीम-आधारित पर्यटन सर्किट
	PM-JANMAN – Urban housing for tribals
	पीएम-जनमन - आदिवासियों के लिए शहरी आवास

Q.No: 79	<p>Which of the below statements is/are correct?</p> <p>Statement 1: India supports connectivity through the North-South Transport Corridor.</p> <p>Statement 2: The corridor strengthens India's trade with the Pacific Islands.</p> <p>नीचे दिए गए कथनों में से कौन सा सही है/हैं?</p> <p>कथन 1: भारत उत्तर-दक्षिण परिवहन गलियारे के माध्यम से संपर्क का समर्थन करता है।</p> <p>कथन 2: यह गलियारा प्रशांत द्वीप समूह के साथ भारत के व्यापार को मजबूत करता है।</p>
	Only Statement 2 is correct
	केवल कथन 2 सही है
	Only Statement 1 is correct
	केवल कथन 1 सही है
	Both 1 and 2 are correct
	1 और 2 दोनों सही हैं
	Neither 1 nor 2 is correct

न तो 1 और न ही 2 सही है

Not Answered

Q.No: 80 With whose participation did the Anushilan group join forces when the Bengal Congress broke up into two factions after the death of CR Das?

सी.आर. दास की मृत्यु के बाद जब बंगाल कांग्रेस दो गुटों में टूट गई तो अनुशीलन समूह ने किसकी भागीदारी से हाथ मिलाया?

Ganesh Ghosh

गणेश घोष

Surya Sen

सूर्य सेन

JM Sengupta

जेएम सेनगुप्ता

Subhash Bose

सुभाष बोस

Not Answered

Q.No: 81 The "emoluments, allowances, and privileges of constitutional officeholders" are governed under which Schedule of the Indian Constitution?

"संवैधानिक पदाधिकारियों की उपलब्धियां, भत्ते और विशेषाधिकार" भारतीय संविधान की किस अनुसूची के अंतर्गत शासित होते हैं?

Fifth Schedule

पाँचवीं अनुसूची

Seventh Schedule

सातवीं अनुसूची

Eleventh Schedule

ग्यारहवीं अनुसूची

Second Schedule

दूसरी अनुसूची

Not Answered

Q.No: 82 What was the main occupation of the majority of the Indian population during the period immediately after independence (around 1947)?

स्वतंत्रता के तुरंत बाद (लगभग 1947) की अवधि के दौरान भारतीय जनसंख्या के बहुमत का मुख्य व्यवसाय क्या था?

Agriculture

कृषि

Information Technology

सूचना प्रौद्योगिकी

Manufacturing

विनिर्माण

Services

सेवाएं

Q.No: 83 How many total medals did India win at the International Shooting Sport Federation (ISSF) Rifle/Pistol World Cup 2023 held in Bhopal?

भोपाल में आयोजित अंतर्राष्ट्रीय निशानेबाजी खेल महासंघ (आईएसएसएफ) राइफल/पिस्टल विश्व कप 2023 में भारत ने कुल कितने पदक जीते?

6

6

5

5

7

7

8

8

Not Answered

Q.No: 84	The Vesara style of temple architecture is a combination of which two styles? वेसर शैली किस दो स्थापत्य शैलियों का सम्मिलन है?
Gandhara and French गंधार और फ्रांसीसी प्रभाव Nagara and Gothic नागर और गोथिक शैली Dravidian and Nagara द्रविड़ और नागर शैलियों का मिश्रण Mughal and Dravidian मुगल एवं द्रविड़ शैली का सम्मिश्रण	

Q.No: 85	Whom Hiuen Tsang called "one of the four lights of world", who's also called Indian Einstein? ह्वेन त्सांग ने किसे "विश्व के चार प्रकाशों में से एक" कहा था, जिसे भारतीय आइंस्टीन भी कहा जाता है?
Charak चरक Vasumitra वसुमित्र Ashvaghosha अश्वघोष Nagarjuna नागार्जुन Not Answered	

Q.No: 86	Which of the following sectors contributes the most to India's GDP? भारत की सकल घरेलू उत्पाद (GDP) में सर्वाधिक योगदान देने वाला क्षेत्र कौन सा है?
Agriculture कृषि Manufacturing विनिर्माण Services सेवाएँ Mining खनन	

Q.No: 87	Earth remote sensing satellites (EOS) are primarily designed to: पृथ्वी सुदूर संवेदन उपग्रह (EOS) मुख्यतः निम्नलिखित के लिए डिज़ाइन किए गए हैं:
Drill into Earth's crust for mineral samples खनिज नमूनों के लिए पृथ्वी की पपड़ी में ड्रिल करना Monitor weather, land use, and environmental changes on Earth पृथ्वी पर मौसम, भूमि उपयोग और पर्यावरण परिवर्तनों पर नज़र रखें Build underground transport systems भूमिगत परिवहन प्रणालियाँ बनाएँ Study the internal structure of Earth using seismic waves भूकंपीय तरंगों का उपयोग करके पृथ्वी की आंतरिक संरचना का अध्ययन करें Not Answered	

Q.No: 88	What is the maximum time limit for completing the trial of a case under the POCSO Act? पॉक्सो अधिनियम के अंतर्गत किसी मामले के न्यायिक निपटान की अधिकतम समय-सीमा क्या है?
6 months	

छह महीने
3 years
तीन वर्ष
2 years
दो वर्ष
1 year
एक वर्ष
Not Answered

Q.No: 89	Which discretionary power allows a Governor to reserve a bill passed by the state legislature for the consideration of the President? कौन सी विवेकाधीन शक्ति राज्यपाल को राज्य विधानमंडल द्वारा पारित विधेयक को राष्ट्रपति के विचारार्थ आरक्षित करने की अनुमति देती है?
	To send a report to the President for the imposition of President's Rule. राष्ट्रपति शासन लागू करने के लिए राष्ट्रपति को रिपोर्ट भेजना।
	To reserve a bill for the President's consideration. किसी विधेयक को राष्ट्रपति के विचारार्थ आरक्षित करना।
	To grant pardon in certain cases. कुछ मामलों में क्षमा प्रदान करना।
	To summon, prorogue, and dissolve the state legislative assembly. राज्य विधान सभा को बुलाना, स्थगित करना और भंग करना।
	Not Answered

Q.No: 90	Which of the following statement is incorrect regarding global indices as of July 2025? जुलाई 2025 तक वैश्विक सूचकांकों के संबंध में निम्नलिखित में से कौन सा कथन गलत है?
	The World Happiness Report 2024 highlights social support, life expectancy, and GDP per capita as key happiness factors. विश्व प्रसन्नता रिपोर्ट 2024 में सामाजिक समर्थन, जीवन प्रत्याशा और प्रति व्यक्ति सकल घरेलू उत्पाद को प्रसन्नता के प्रमुख कारकों के रूप में रेखांकित किया गया है।
	AQI consistently above 200 signals general health risks and requires urgent policy action. AQI का लगातार 200 से ऊपर रहना सामान्य स्वास्थ्य जोखिम का संकेत है और इसके लिए तत्काल नीतिगत कार्रवाई की आवश्यकता है।
	Despite being discontinued, the Ease of Doing Business report remains influential for investors assessing startup procedures. बंद होने के बावजूद, व्यवसाय करने में आसानी संबंधी रिपोर्ट स्टार्टअप प्रक्रियाओं का मूल्यांकन करने वाले निवेशकों के लिए प्रभावशाली बनी हुई है।
	A rise in GNI per capita alone can significantly improve HDI , even with falling life expectancy and education. प्रति व्यक्ति सकल राष्ट्रीय आय में वृद्धि से ही मानव विकास सूचकांक में उल्लेखनीय सुधार हो सकता है, भले ही जीवन प्रत्याशा और शिक्षा में गिरावट हो रही हो।
	Not Answered

Q.No: 91	What is the purpose of the 'Beti Bachao Beti Padhao' scheme? 'बेटी बचाओ बेटी पढ़ाओ' योजना का उद्देश्य क्या है?
	Saving and educating the girl child बालिकाओं को बचाना और शिक्षित करना
	Women's health insurance महिला स्वास्थ्य बीमा
	Employment for women महिलाओं के लिए रोजगार
	Financial support for girl's marriage लड़की की शादी के लिए वित्तीय सहायता

Q.No: 92	Which of the following is the correct sequence in the life cycle of a star like the Sun? सूर्य जैसे तारे के जीवन चक्र में निम्नलिखित में से कौन सा क्रम सही है?
	Protostar → White Dwarf → Red Giant → Main Sequence प्रोटोस्टार → श्वेत बौना → लाल दानव → मुख्य अनुक्रम
	Nebula → Red Giant → Main Sequence → White Dwarf

नेबुला → लाल दानव → मुख्य अनुक्रम → सफेद बौना

Main Sequence → Red Giant → White Dwarf

मुख्य अनुक्रम → लाल दानव → सफेद बौना

Red Giant → Protostar → White Dwarf

लाल दानव → प्रोटोस्टार → सफेद बौना

Not Answered

Q.No: 93 A conductor of length L and resistance R is cut into two equal halves. These two halves are then connected in parallel. Find the equivalent resistance of this parallel combination?

लंबाई L और प्रतिरोध R वाले एक चालक को दो बराबर भागों में काटा जाता है। फिर इन दोनों भागों को समान्तर क्रम में जोड़ा जाता है। इस समान्तर संयोजन का तुल्य प्रतिरोध ज्ञात कीजिए।

$R/4$

$R/4$

R

R

$R/2$

$R/2$

$R/8$

$R/8$

Not Answered

Q.No: 94 Which of the following states has the lowest population in India, according to the 2011 Census of India?

भारत की 2011 की जनगणना के अनुसार, निम्नलिखित में से किस राज्य की जनसंख्या भारत में सबसे कम है?

Maharashtra

महाराष्ट्र

Odisha

ओडिशा

Punjab

पंजाब

Madhya Pradesh

मध्य प्रदेश

Q.No: 95 During the period of 1947-1990, India's trade policy was largely characterized by:

1947-1990 की अवधि के दौरान भारत की व्यापार नीति मुख्यतः निम्नलिखित थी:

An inward-looking strategy emphasizing import substitution and protection of domestic industries.

आयात प्रतिस्थापन और घरेलू उद्योगों के संरक्षण पर जोर देने वाली एक अंतर्मुखी रणनीति।

A policy of free trade with minimal government intervention in international transactions.

अंतर्राष्ट्रीय लेन-देन में न्यूनतम सरकारी हस्तक्षेप के साथ मुक्त व्यापार की नीति।

A liberal import policy aimed at providing consumers with a wide range of goods.

उदार आयात नीति का उद्देश्य उपभोक्ताओं को विभिन्न प्रकार की वस्तुएं उपलब्ध कराना है।

An aggressive export-oriented strategy focused on global competitiveness.

वैश्विक प्रतिस्पर्धा पर केन्द्रित एक आक्रामक निर्यात-मुख्य रणनीति।

Not Answered

Q.No: 96 Which of the following is a characteristic feature of meristematic tissues in plants?

निम्नलिखित में से कौन सा पौधों में मेरिस्टेमेटिक ऊतकों की एक विशिष्ट विशेषता है?

Large vacuoles and thick cell walls

बड़ी रिक्तिकाएँ और मोटी कोशिका भित्ति

Absence of nucleus and presence of lignified walls

नाभिक की अनुपस्थिति और लिग्निफाइड दीवारों की उपस्थिति

Actively dividing cells with dense cytoplasm and prominent nuclei

सघन कोशिकाद्रव्य और प्रमुख केन्द्रक वाली सक्रिय रूप से विभाजित होने वाली कोशिकाएं

Dead cells that provide mechanical support

मृत कोशिकाएं जो यांत्रिक सहायता प्रदान करती हैं

Not Answered

Q.No: 97 What does the 'invisible hand' concept, as proposed by Adam Smith, primarily signify?

एडम स्मिथ द्वारा प्रस्तावित 'अदृश्य हाथ' अवधारणा मुख्यतः क्या दर्शाती है?

Control of monopolies

एकाधिकार पर नियंत्रण

Government control in markets

बाजारों में सरकारी नियंत्रण

Market equilibrium achieved via self-interest

स्वार्थ के माध्यम से प्राप्त बाजार संतुलन

International trade regulation

अंतर्राष्ट्रीय व्यापार विनियमन

Not Answered

Q.No: 98 Which of the following High Courts has jurisdiction over more than one state?

निम्नलिखित में से किस उच्च न्यायालय का क्षेत्राधिकार एक से अधिक राज्यों पर है?

Kerala High Court

केरल उच्च न्यायालय

Guwahati High Court

गुवाहाटी उच्च न्यायालय

Delhi High Court

दिल्ली उच्च न्यायालय

Patna High Court

पटना उच्च न्यायालय

Not Answered

Q.No: 99 Which of the following correctly matches the population growth phase in India with its key characteristic?

निम्नलिखित में से कौन सा भारत में जनसंख्या वृद्धि चरण को उसकी प्रमुख विशेषता से सही ढंग से मेल खाता है?

Phase IV (Post-1981) – Sudden increase in fertility rate due to migration

चरण IV (1981 के बाद) – प्रवास के कारण प्रजनन दर में अचानक वृद्धि

Phase III (1951–1981) – Population explosion caused by falling death rate and high fertility

चरण III (1951-1981) – मृत्यु दर में गिरावट और उच्च प्रजनन क्षमता के कारण जनसंख्या विस्फोट

Phase I (1901–1921) – Rapid population explosion due to low mortality and high fertility

चरण I (1901-1921) – कम मृत्यु दर और उच्च प्रजनन क्षमता के कारण तीव्र जनसंख्या विस्फोट

Phase II (1921–1951) – High mortality rate and declining birth rate

चरण II (1921-1951) – उच्च मृत्यु दर और घटती जन्म दर

Not Answered

Q.No: 100 Which of the following is an erosional landform created primarily by river action?

निम्नलिखित में से कौन सा मुख्य रूप से नदी क्रिया द्वारा निर्मित अपरदनात्मक भू-आकृति है?

Moraine

मोरेन

Delta

डेल्टा

Gorge

गॉर्ज

Levee

लेवी

PART - C (English Language and Comprehension)

Q.No: 101 Which sentence contains a word that is spelled incorrectly?

The actors had a final **rehearsel** before the big show.

The soldier jumped out of the plane using a **parachute**.

The students gathered **together** in the assembly hall.

She carefully placed the vase on the **shelf**.

Q.No: 102 Read the following passage carefully and answer the questions that follow by selecting the most appropriate option from the given alternatives.

In the age of endless options—from streaming services to social media platforms—modern individuals face what psychologists call “decision fatigue.” Unlike earlier generations who had limited choices, today’s youth are constantly required to decide: what to watch, whom to follow, what to share, and how to respond. While freedom of choice is often celebrated, too many choices can lead to stress, dissatisfaction, and even paralysis. Ironically, abundance can become overwhelming. Algorithms, designed to predict preferences, often narrow exposure rather than broaden it, creating digital bubbles. People may feel in control, yet their choices are subtly shaped by unseen patterns. Over time, the constant need to choose can drain mental energy, leaving individuals anxious or indifferent. True digital freedom may lie not in limitless options, but in mindful engagement and setting personal boundaries. Recognising when to choose—and when to step back—could be the new wisdom of the connected age.

What is the main issue discussed in the passage?

Rise of social media trends

Overuse of mobile apps

Stress caused by excessive digital choices

Lack of internet literacy

Q.No: 103 Read the following passage carefully and answer the questions that follow by selecting the most appropriate option from the given alternatives.

In the age of endless options—from streaming services to social media platforms—modern individuals face what psychologists call “decision fatigue.” Unlike earlier generations who had limited choices, today’s youth are constantly required to decide: what to watch, whom to follow, what to share, and how to respond. While freedom of choice is often celebrated, too many choices can lead to stress, dissatisfaction, and even paralysis. Ironically, abundance can become overwhelming. Algorithms, designed to predict preferences, often narrow exposure rather than broaden it, creating digital bubbles. People may feel in control, yet their choices are subtly shaped by unseen patterns. Over time, the constant need to choose can drain mental energy, leaving individuals anxious or indifferent. True digital freedom may lie not in limitless options, but in mindful engagement and setting personal boundaries. Recognising when to choose—and when to step back—could be the new wisdom of the connected age.

What does the author imply about algorithms?

They always give better choices

They expand one’s interests

They limit exposure to diverse content

They reduce online ads

Q.No: 104	<p>Read the following passage carefully and answer the questions that follow by selecting the most appropriate option from the given alternatives.</p> <p>In the age of endless options—from streaming services to social media platforms—modern individuals face what psychologists call “decision fatigue.” Unlike earlier generations who had limited choices, today’s youth are constantly required to decide: what to watch, whom to follow, what to share, and how to respond. While freedom of choice is often celebrated, too many choices can lead to stress, dissatisfaction, and even paralysis. Ironically, abundance can become overwhelming. Algorithms, designed to predict preferences, often narrow exposure rather than broaden it, creating digital bubbles. People may feel in control, yet their choices are subtly shaped by unseen patterns. Over time, the constant need to choose can drain mental energy, leaving individuals anxious or indifferent. True digital freedom may lie not in limitless options, but in mindful engagement and setting personal boundaries. Recognising when to choose—and when to step back—could be the new wisdom of the connected age.</p> <p>What paradox is presented in the passage?</p>
Choice leads to control but also exhaustion	
Technology helps only the rich	
More apps mean less productivity	
Less data brings more security	
Not Answered	

Q.No: 105	<p>Read the following passage carefully and answer the questions that follow by selecting the most appropriate option from the given alternatives.</p> <p>In the age of endless options—from streaming services to social media platforms—modern individuals face what psychologists call “decision fatigue.” Unlike earlier generations who had limited choices, today’s youth are constantly required to decide: what to watch, whom to follow, what to share, and how to respond. While freedom of choice is often celebrated, too many choices can lead to stress, dissatisfaction, and even paralysis. Ironically, abundance can become overwhelming. Algorithms, designed to predict preferences, often narrow exposure rather than broaden it, creating digital bubbles. People may feel in control, yet their choices are subtly shaped by unseen patterns. Over time, the constant need to choose can drain mental energy, leaving individuals anxious or indifferent. True digital freedom may lie not in limitless options, but in mindful engagement and setting personal boundaries. Recognising when to choose—and when to step back—could be the new wisdom of the connected age.</p> <p>According to the author, what may be a solution?</p>
Faster internet plans	
Reducing social media apps	
Mindful engagement and limits	
Following more influencers	

Q.No: 106	<p>Read the following passage carefully and answer the questions that follow by selecting the most appropriate option from the given alternatives.</p> <p>In the age of endless options—from streaming services to social media platforms—modern individuals face what psychologists call “decision fatigue.” Unlike earlier generations who had limited choices, today’s youth are constantly required to decide: what to watch, whom to follow, what to share, and how to respond. While freedom of choice is often celebrated, too many choices can lead to stress, dissatisfaction, and even paralysis. Ironically, abundance can become overwhelming. Algorithms, designed to predict preferences, often narrow exposure rather than broaden it, creating digital bubbles. People may feel in control, yet their choices are subtly shaped by unseen patterns. Over time, the constant need to choose can drain mental energy, leaving individuals anxious or indifferent. True digital freedom may lie not in limitless options, but in mindful engagement and setting personal boundaries. Recognising when to choose—and when to step back—could be the new wisdom of the connected age.</p> <p>What is the tone of the passage?</p>
Sarcastic	
Cautionary	
Indifferent	
Aggressive	
Not Answered	

Q.No: 107	<p>Read the passage and answer the questions:</p> <p>Much of the discussion in this book is about biases of intuition. However, the focus on biases does not mean that intuition is always wrong—far from it. Most of the time, the quick judgments of our intuitive mind, what I call System 1, are accurate enough to help us navigate the world. This system operates automatically and quickly, with little or no effort.</p> <p>On the other hand, System 2 is the slower, more deliberate mode of thinking. It allocates attention to effortful mental activities, such as solving complex problems or evaluating logical arguments. System 2 is more methodical and rational, but it is also lazier—it prefers to endorse the intuitions of System 1 rather than question them.</p> <p>This division of labour works well most of the time, but it also creates predictable errors. Because System 1 is prone to biases and snap judgments, we often make decisions that are not as rational as we believe. Understanding these two systems can help us recognize when we are relying too much on intuition and when we need to engage in more deliberate thinking.</p> <p>Identify the sentence with correct subject-verb agreement:</p>
	The quick judgments of our intuitive mind, what I call System 1, is accurate enough to help us navigate the world.
	This division of labor work well most of the time, but it also creates predictable errors.
	Understanding these two systems can helps us recognize when we are relying too much on intuition.
	System 2 allocates attention to effortful mental activities, such as solving complex problems or evaluating logical arguments.
	Not Answered

Q.No: 108	<p>Read the passage and answer the questions:</p> <p>Much of the discussion in this book is about biases of intuition. However, the focus on biases does not mean that intuition is always wrong—far from it. Most of the time, the quick judgments of our intuitive mind, what I call System 1, are accurate enough to help us navigate the world. This system operates automatically and quickly, with little or no effort.</p> <p>On the other hand, System 2 is the slower, more deliberate mode of thinking. It allocates attention to effortful mental activities, such as solving complex problems or evaluating logical arguments. System 2 is more methodical and rational, but it is also lazier—it prefers to endorse the intuitions of System 1 rather than question them.</p> <p>This division of labour works well most of the time, but it also creates predictable errors. Because System 1 is prone to biases and snap judgments, we often make decisions that are not as rational as we believe. Understanding these two systems can help us recognize when we are relying too much on intuition and when we need to engage in more deliberate thinking.</p> <p>Choose the sentence that correctly uses a relative pronoun:</p>
	System 1 is the intuitive mode of thinking, who operates automatically and quickly.
	The biases, which influence our judgments, often lead to predictable errors.
	Understanding the two systems, whom have different roles, is crucial for decision-making.
	The effortful mental activities whose System 2 performs include solving complex problems.
	Not Answered

Q.No: 109	<p>Read the passage and answer the questions:</p> <p>Much of the discussion in this book is about biases of intuition. However, the focus on biases does not mean that intuition is always wrong—far from it. Most of the time, the quick judgments of our intuitive mind, what I call System 1, are accurate enough to help us navigate the world. This system operates automatically and quickly, with little or no effort.</p> <p>On the other hand, System 2 is the slower, more deliberate mode of thinking. It allocates attention to effortful mental activities, such as solving complex problems or evaluating logical arguments. System 2 is more methodical and rational, but it is also lazier—it prefers to endorse the intuitions of System 1 rather than question them.</p> <p>This division of labour works well most of the time, but it also creates predictable errors. Because System 1 is prone to biases and snap judgments, we often make decisions that are not as rational as we believe. Understanding these two systems can help us recognize when we are relying too much on intuition and when we need to engage in more deliberate thinking.</p> <p>What is the meaning of the word "deliberate" in the sentence:</p> <p>"System 2 is the slower, more deliberate mode of thinking."</p>
-----------	--

Accidental

Careful and intentional

Quick and effortless

Biased

Not Answered

Q.No: 110	<p>Read the passage and answer the questions:</p> <p>Much of the discussion in this book is about biases of intuition. However, the focus on biases does not mean that intuition is always wrong—far from it. Most of the time, the quick judgments of our intuitive mind, what I call System 1, are accurate enough to help us navigate the world. This system operates automatically and quickly, with little or no effort.</p> <p>On the other hand, System 2 is the slower, more deliberate mode of thinking. It allocates attention to effortful mental activities, such as solving complex problems or evaluating logical arguments. System 2 is more methodical and rational, but it is also lazier—it prefers to endorse the intuitions of System 1 rather than question them.</p> <p>This division of labour works well most of the time, but it also creates predictable errors. Because System 1 is prone to biases and snap judgments, we often make decisions that are not as rational as we believe. Understanding these two systems can help us recognize when we are relying too much on intuition and when we need to engage in more deliberate thinking.</p> <p>Choose the best synonym for the word "endorse" in the sentence:</p> <p>"System 2 is more methodical and rational, but it is also lazier—it prefers to endorse the intuitions of System 1 rather than question them."</p>
-----------	--

Approve

Reject

Criticize

Delay

Q.No: 111	<p>Read the passage and answer the questions:</p> <p>Much of the discussion in this book is about biases of intuition. However, the focus on biases does not mean that intuition is always wrong—far from it. Most of the time, the quick judgments of our intuitive mind, what I call System 1, are accurate enough to help us navigate the world. This system operates automatically and quickly, with little or no effort.</p> <p>On the other hand, System 2 is the slower, more deliberate mode of thinking. It allocates attention to effortful mental activities, such as solving complex problems or evaluating logical arguments. System 2 is more methodical and rational, but it is also lazier—it prefers to endorse the intuitions of System 1 rather than question them.</p> <p>This division of labour works well most of the time, but it also creates predictable errors. Because System 1 is prone to biases and snap judgments, we often make decisions that are not as rational as we believe. Understanding these two systems can help us recognize when we are relying too much on intuition and when we need to engage in more deliberate thinking.</p> <p>According to the passage, what is one drawback of System 1 thinking?</p>
	It always leads to incorrect decisions.
	It requires too much mental effort.
	It can be prone to biases and snap judgments.
	It completely replaces System 2 in decision-making.
	Not Answered

Q.No: 112	<p>In the following passage, some words have been omitted. Read the passage carefully and choose the most appropriate option from the given alternatives to fill in each blank. Mark your answer for each question.</p> <p>As technology continues to advance, space exploration is no longer limited to astronauts and scientists. In the coming decades, space could become a place for engineers, architects, doctors, and even artists. The idea of working beyond Earth, once considered science fiction, is slowly becoming a realistic (1)____. Many countries have already started investing in training programs that prepare students for space-related fields. These programs not only focus on science, but also build problem-solving and leadership skills. Working in space will bring its own challenges—long durations, isolation, and technical failures will require (2)____ preparation. Yet, the chance to be part of something bigger than oneself is what draws many young minds. With space tourism rising and private companies joining the race, the job market is expected to (3)____. However, to succeed in this field, one must stay curious, adaptable, and (4)____. In the future, reaching for the stars might not be a dream, but a (5)_____</p> <p>(1)</p>
	ambition
	option
	mystery
	illusion
	Not Answered

Q.No: 113	<p>In the following passage, some words have been omitted. Read the passage carefully and choose the most appropriate option from the given alternatives to fill in each blank. Mark your answer for each question.</p> <p>As technology continues to advance, space exploration is no longer limited to astronauts and scientists. In the coming decades, space could become a place for engineers, architects, doctors, and even artists. The idea of working beyond Earth, once considered science fiction, is slowly becoming a realistic (1)____. Many countries have already started investing in training programs that prepare students for space-related fields. These programs not only focus on science, but also build problem-solving and leadership skills. Working in space will bring its own challenges—long durations, isolation, and technical failures will require (2)____ preparation. Yet, the chance to be part of something bigger than oneself is what draws many young minds. With space tourism rising and private companies joining the race, the job market is expected to (3)____. However, to succeed in this field, one must stay curious, adaptable, and (4)____. In the future, reaching for the stars might not be a dream, but a (5)_____</p> <p>(2)</p>
	casual
	emotional
	intense
	frequent
	Not Answered

Q.No: 114	<p>In the following passage, some words have been omitted. Read the passage carefully and choose the most appropriate option from the given alternatives to fill in each blank. Mark your answer for each question.</p> <p>As technology continues to advance, space exploration is no longer limited to astronauts and scientists. In the coming decades, space could become a place for engineers, architects, doctors, and even artists. The idea of working beyond Earth, once considered science fiction, is slowly becoming a realistic (1)_____. Many countries have already started investing in training programs that prepare students for space-related fields. These programs not only focus on science, but also build problem-solving and leadership skills. Working in space will bring its own challenges—long durations, isolation, and technical failures will require (2)_____ preparation. Yet, the chance to be part of something bigger than oneself is what draws many young minds. With space tourism rising and private companies joining the race, the job market is expected to (3)_____. However, to succeed in this field, one must stay curious, adaptable, and (4)_____. In the future, reaching for the stars might not be a dream, but a (5)_____</p> <p>(3)</p>
collapse	
expand	
decline	
compete	

Q.No: 115	<p>In the following passage, some words have been omitted. Read the passage carefully and choose the most appropriate option from the given alternatives to fill in each blank. Mark your answer for each question.</p> <p>As technology continues to advance, space exploration is no longer limited to astronauts and scientists. In the coming decades, space could become a place for engineers, architects, doctors, and even artists. The idea of working beyond Earth, once considered science fiction, is slowly becoming a realistic (1)_____. Many countries have already started investing in training programs that prepare students for space-related fields. These programs not only focus on science, but also build problem-solving and leadership skills. Working in space will bring its own challenges—long durations, isolation, and technical failures will require (2)_____ preparation. Yet, the chance to be part of something bigger than oneself is what draws many young minds. With space tourism rising and private companies joining the race, the job market is expected to (3)_____. However, to succeed in this field, one must stay curious, adaptable, and (4)_____. In the future, reaching for the stars might not be a dream, but a (5)_____</p> <p>(4)</p>
reliable	
silent	
proud	
stubborn	

Q.No: 116	<p>In the following passage, some words have been omitted. Read the passage carefully and choose the most appropriate option from the given alternatives to fill in each blank. Mark your answer for each question.</p> <p>As technology continues to advance, space exploration is no longer limited to astronauts and scientists. In the coming decades, space could become a place for engineers, architects, doctors, and even artists. The idea of working beyond Earth, once considered science fiction, is slowly becoming a realistic (1)_____. Many countries have already started investing in training programs that prepare students for space-related fields. These programs not only focus on science, but also build problem-solving and leadership skills. Working in space will bring its own challenges—long durations, isolation, and technical failures will require (2)_____ preparation. Yet, the chance to be part of something bigger than oneself is what draws many young minds. With space tourism rising and private companies joining the race, the job market is expected to (3)_____. However, to succeed in this field, one must stay curious, adaptable, and (4)_____. In the future, reaching for the stars might not be a dream, but a (5)_____</p> <p>(5)</p>
mistake	
memory	
reality	
direction	

Q.No: 117	Find the incorrect part of the sentence: He divided the sweets between his five friends.
He divided	
between his five friends	
No error	
the sweets	

Q.No: 118	Select the option that expresses the given sentence in Direct to Indirect Speech. He said, "I have completed the task."
He said that he has completed the task.	
He said that he was completing the task.	
He said that he completed the task.	
He said that he had completed the task.	

Q.No: 119	What does the idiom 'To leave no stone unturned' mean?
Search thoroughly	
Avoid effort	
Relax completely	
Ignore issues	

Q.No: 120	Choose the correct direct speech form of the following sentence. He asked if I had been aware of the policies of the company.
He said, "Did you be aware of the policies of the company?"	
He said, "Were you awared of the policies of the company?"	
He said, "Was you aware of the policies of the company?"	
He said, "Were you aware of the policies of the company?"	

Q.No: 121	Select the most appropriate option to improve the bold part of the sentence. He is one of those players who has scored the most goals.
have scored	
had been scoring	
scores	
had scored	

Q.No: 122	Arrange the sentence parts: (A) met (B) his friend (C) at the station (D) Rohit
DCBA	
DBAC	
DACB	

Q.No: 123 Transform the following sentence into active voice.
All the structures built in that area had been demolished due to encroachment.

They had demolished all the structures build in that area due to encroachment.

They had demolished all the structures that were built in that area due to encroachment.

They had demolished all the structures built in that area due to encroachment.

They had demolished all the structures built in that area due to encroachment by the people.

Q.No: 124 Select the most appropriate option to fill in the blank.
He speaks English ___ than I do.

best

better

more good

good

Q.No: 125 In the following question, a sentence has been given in Indirect Speech. Choose the correct Direct Speech form.

The climatologist said that if global temperatures kept rising, sea levels would threaten major coastal cities.

The climatologist said, "If global temperatures kept rising, sea levels will threaten major coastal cities."

The climatologist said, "If global temperatures had kept rising, sea levels would have threatened major coastal cities."

The climatologist said, "If global temperatures kept rising, sea levels would threaten major coastal cities."

The climatologist said, "If global temperatures keep rising, sea levels threaten major coastal cities."

Q.No: 126 What does the idiom 'On cloud nine' mean?

Lazy

Extremely happy

Very angry

Confused

Q.No: 127 Which sentence contains a word that is spelled incorrectly?

The weather forecast mentioned a change in meterological patterns.

He is passionate about anthropology and human cultures.

The scientist wrote a paper on marine biology and its ecosystems.

She is studying zoology at the university to become a biologist.

Q.No: 128 Select the option that expresses the given sentence in Direct to Indirect Speech.
He said, "I don't like spicy food."

He said that he hadn't liked spicy food.

He said that he likes spicy food.

He said that he didn't like spicy food.

He said that he doesn't like spicy food.

Q.No: 129 Select the synonym of **Perfunctory**.

Diligent

Careless

Painstaking

Detailed

Not Answered

Q.No: 130 Choose the option that completes the sentence using the correct spelling.

The newly fallen snow _____ transformed the landscape.

magically

magically

magickelly

majicelly

Q.No: 131 In the following question, the first and the last parts of the sentence/passage are numbered 1 and 6. The rest of the sentence/passage is split into four parts — P, Q, R, and S. These four parts are not given in their proper order. Read the sentence/passage and find the most logical order of the parts between 1 and 6.

I visited a zoo last weekend.P: The lions were resting under trees.Q: I saw many wild animals there.R: Monkeys were swinging on branches.S: The elephants were eating sugarcane.6. It was a fun and learning experience.

QSPR

PQSR

PRSQ

QPSR

Q.No: 132 Select the option that expresses the given sentence in Direct to Indirect Speech.
She said to me, "Would you like some coffee?"

She asked that I would like some coffee.

She asked me if I would like some coffee.

She asked me would I like some coffee.

She offered me some coffee.

Q.No: 133 Select the option that expresses the given sentence in Direct Speech.
She said that she was learning French.

She said, "I learn French."

She said, "I am learning French."

She said, "I was learning French."

She said, "I have learned French."

Q.No: 134 Select the most appropriate option to improve the bold part of the sentence.
He insisted **to go** home.

going on

upon going

that he goes

on going

Q.No: 135 Select the correct passive form of the given sentence.
"They might be repairing the engine now."

The engine might be repaired now.

The engine may be repairing now.

The engine might be being repaired now.

The engine might repaired now.

Q.No: 136 Find the incorrect part of the sentence:
Neither of the two brothers are trustworthy.

Neither of the two brothers

are

trustworthy

No error

Not Answered

Q.No: 137 In the following question, the first and the last parts of the sentence/passage are numbered 1 and 6. The rest of the sentence/passage is split into four parts — P, Q, R, and S. These four parts are not given in their proper order. Read the sentence/passage and find the most logical order of the parts between 1 and 6.

A triangle has three sides.P: The angles can be equal or different.Q: It is one of the basic shapes.R: Every triangle has three angles.S: The sum of angles is always 180 degrees.6. Triangles are important in geometry.

QPRS

PRSQ

RPQS

QRPS

Q.No: 138 Choose the antonym of 'Lax'.

Reliable

Stack

Careless

Loose

Q.No: 139	Rearrange the parts of this sentence: (A) rising inflation (B) causes difficulties (C) for middle-class families (D) everywhere
BCAD	
BACD	
ABCD	
BACD	

Q.No: 140	Arrange the sentence parts: (A) every week (B) we (C) play (D) cricket
BACD	
BADC	
DACB	
CADB	

Q.No: 141	Choose the one which can be substituted for the given sentence. A person who writes books
Publisher	
Editor	
Orator	
Author	

Q.No: 142	In the following question, the first and the last parts of the sentence/passage are numbered 1 and 6. The rest of the sentence/passage is split into four parts — P, Q, R, and S. These four parts are not given in their proper order. Read the sentence/passage and find the most logical order of the parts between 1 and 6. Solar energy is gaining popularity worldwide. P: It is available in abundance. Q: This makes it a sustainable option. R: Unlike fossil fuels, it doesn't emit harmful gases. S: Also, it reduces dependency on non-renewable sources. 6. Hence, governments are investing in solar technology.
PRSQ	
QPSR	
RSPQ	
PQRS	

Q.No: 143	In the following question, the first and the last parts of the sentence/passage are numbered 1 and 6. The rest of the sentence/passage is split into four parts — P, Q, R, and S. These four parts are not given in their proper order. Read the sentence/passage and find the most logical order of the parts between 1 and 6. Science fiction fuels technological imagination. P: It inspires young minds to innovate. Q: Many past inventions were once fictional ideas. R: It encourages thinking beyond limits. S: Stories often explore future societies. 6. Thus, sci-fi has real-world influence.
PQRS	
SRQP	
QPRS	
RQPS	
Not Answered	

Q.No: 144	Choose the part of the sentence that contains an error: The child is afraid from the dark.
The child is	
the dark	
No error	
afraid from	

Q.No: 145	Choose the part of the sentence that contains an error: You should avail of every opportunity.
every opportunity	
No error	
avail of	
You should	

Q.No: 146	Select the option that expresses the given sentence in Direct Speech. She told us that she had not seen the movie.
She said, "I didn't see the movie."	
She said, "I haven't seen the movie."	
She said, "I had not seen the movie."	
She said, "She hadn't seen the movie."	

Q.No: 147	Select the most appropriate homonym. He will bat for his friend's innocence.
Criticize	
Play cricket	
Hit	
support	

Q.No: 148	Select the option that expresses the given sentence in Direct to Indirect Speech. She said, "Can I ask a question?"
She asked whether she could ask a question.	
She asked whether she might ask a question.	
She said whether she could ask a question.	
She asked whether she can ask a question.	

Q.No: 149	Select the correct active form of the given sentence: "The assignment work has been successfully finished ahead of time by Pragna."
Pragna has finished her assignment work ahead of time.	
Pragna has successfully finished her assignment ahead of time.	
Pragna have successfully finished her assignment work ahead of time.	

Pragna has successfully finished her assignment work ahead of time.

Q.No: 150 Rearrange the parts of this sentence:
(A) before the heavy rains (B) the villagers (C) repaired the damaged bridge (D) with the help of officials

DACB

BACD

BCAD

ABCD

Q.No: 151 Choose the antonym of 'commendable':

Notable

Blameworthy

Laudable

Admirable

Not Answered

Q.No: 152 Select the most appropriate option to improve the bold part of the sentence.
I am used **to eat** late at night.

for eating

eating

to eating

in eating

Q.No: 153 Select the correct passive form of the given sentence.
"The director should announce the results today."

The results should being announced.

The results should be announced today.

The results should be announce today.

The results should have been announced.

Q.No: 154 Select the synonym of **Exaggerate**.

Amplify

Minimize

Suppress

Understate

Q.No: 155 Arrange the sentence parts:
(A) the headmaster (B) for his punctuality (C) praised (D) the student

ABCD

ADCB

BDCA

ACBD

Q.No: 156 Select the synonym of **Gratify**.

Satisfy

Insult

Displease

Annoy

Q.No: 157 Rearrange the parts of this sentence:
(A) for higher education (B) many students (C) prefer to go abroad (D) these days

ABCD

BDAC

BADC

BACD

Q.No: 158 In the following question, the first and the last parts of the sentence/passage are numbered 1 and 6. The rest of the sentence/passage is split into four parts — P, Q, R, and S. These four parts are not given in their proper order. Read the sentence/passage and find the most logical order of the parts between 1 and 6.
Ravi opened his new geometry box. P: It had a ruler, compass, and protractor. Q: He used it in his maths class. R: He showed it to his friends. S: It was made of metal and looked shiny. 6. He liked his new box very much.

SRPQ

PSRQ

PRQS

PRSQ

Not Answered

Q.No: 159 Select the most appropriate option to improve the bold part of the sentence.
Hardly I had entered the room when the phone rang.

Hardly had I entered

Hardly was I entering

I had hardly entered

I hardly had entered

Q.No: 160 Select the most appropriate option to fill in the blank.
His actions are incompatible ____ his words.

to

for

with

by

Not Answered

Q.No: 161	Select the most appropriate homonym. The judge will pass the verdict.
Cross	
Fail	
Shift	
Announce	

Q.No: 162	Choose the antonym of 'assert':
Deny	
Maintain	
Proclaim	
Declare	
Not Answered	

Q.No: 163	Choose the correct meaning of Idiom "Flog a dead horse".
Beat an opponent unfairly	
Repeat a settled argument	
Chase an impossible goal	
Waste time on a lost cause	

Q.No: 164	Select the synonym of 'Carnal'.
Demand	
Greed	
Jealousy	
Earthly	
Not Answered	

Q.No: 165	Select the correct active form. "Was your phone being charged by someone?"
Has someone charged your phone?	
Did someone charge your phone?	
Was someone charging your phone?	
Is someone charging your phone?	

Q.No: 166	Choose the correct sequence to form a meaningful sentence: (A) has a long (B) India (C) and rich (D) cultural history
BDCA	
BCAD	
BACD	
BADC	

Q.No: 167	Choose the one which can be substituted for the given sentence. The murder of a king
Regicide	
Patricide	
Fratricide	
Homicide	
Not Answered	

Q.No: 168	Select the most appropriate option to fill in the blank. The ___ of the movie was unexpected.
ends	
ending	
ended	
end	

Q.No: 169	Select the option that expresses the given sentence in Direct to Indirect Speech. She said, "I had eaten breakfast."
She said that she ate breakfast.	
She said that she would have eaten breakfast.	
She said that she had eaten breakfast.	
She said that she has eaten breakfast.	

Q.No: 170	Select the correct active form of the given sentence. "The dining hall was being thoroughly cleaned by the workers."
The workers were thoroughly cleaned the dinning hall.	
The workers were thoroughly cleaning the dinning hall.	
The workers had thoroughly cleaning the dinning hall.	
The workers was thoroughly cleaning the dinning hall.	

Q.No: 171	Select the correct passive form of the given sentence. "The judge is hearing the final arguments."
The final arguments were heard.	
The final arguments has heard.	
The final arguments was being heard.	
The final arguments are being heard by the judge.	

Q.No: 172	Choose the one which can be substituted for the given sentence. A political disorder and absence of government
Plutocracy	
Monarchy	

Anarchy

Oligarchy

Q.No: 173 What does the idiom 'Barking up the wrong tree' mean?

Apologizing

Praising someone

Accusing wrongly

Succeeding quickly

Q.No: 174 Select the most appropriate option to fill in the blank.
They arrived ___ the airport on time.

over

at

in

on

Q.No: 175 Select the most appropriate option to improve the bold part of the sentence.
It is high time you **leave the room**.

have left the room

had left the room

left the room

leaves the room

Q.No: 176 Choose the antonym of 'eminent':

Prominent

Celebrated

Distinguished

Obscure

Q.No: 177 Select the most appropriate homonym.
The king sat on a **throne**.

Crown

Chair

Rule

Sword

Q.No: 178 Select the most appropriate option to improve the bold part of the sentence.
This session is an improvement **rather the previous one**.

best

more good

very better

over

Q.No: 179 Identify the part containing a grammatical or structural error:
The father with his sons are arriving soon.

with his sons

No error

The father

are arriving soon

Not Answered

Q.No: 180 What is the one-word substitute for "A poem of mourning"?

Ballad

Ode

Elegy

Sonnet

Q.No: 181 Select the correct passive form of the given sentence.
"I will complete the work tomorrow."

The work will have completed by me.

The work will be completed by me tomorrow.

The work shall completed by me.

The work is completed tomorrow by me.

Q.No: 182 Choose the correct meaning of the Idiom:
'Cut no ice'

Have no effect

Create trouble

Be sharp

Stop something

Not Answered

Q.No: 183 Find the incorrect part of the sentence:
The judge ordered the prisoner to hung till death.

to hung till death

No error

The judge ordered

the prisoner

Q.No: 184	Choose the correct direct speech form of the following sentence. Simran said that she had been writing a letter to the principal.
Simran said, "I have writing a letter to the principal."	
Simran said, "I have been writing a letter to the principal."	
Simran said, "I was being writing a letter to the principal."	
Simran said, "I was written a letter to the principal."	

Q.No: 185	Select the most appropriate option to fill in the blank. The patient was devoid ____ any hope of recovery.
in	
with	
of	
at	

Q.No: 186	In the following question, the first and the last parts of the sentence/passage are numbered 1 and 6. The rest of the sentence/passage is split into four parts — P, Q, R, and S. These four parts are not given in their proper order. Read the sentence/passage and find the most logical order of the parts between 1 and 6. Email has changed modern communication. P: It is faster than traditional letters. Q: Instant messaging is also gaining popularity. R: Emails allow file sharing and formal contact. S: However, they may lack personal touch. 6. Choosing the right medium depends on context.
PRSQ	
PQSR	
RPSQ	
QPRS	
Not Answered	

Q.No: 187	What does the idiom 'To grasp at straws' mean?
To win easily	
To try desperate measures	
To show courage	
To make careful decisions	
Not Answered	

Q.No: 188	Select the most appropriate option to fill in the blank. She was credited ____ inventing the device.
for	
with	
by	
to	
Not Answered	

Q.No: 189	<p>In the following question, the first and the last parts of the sentence/passage are numbered 1 and 6. The rest of the sentence/passage is split into four parts — P, Q, R, and S. These four parts are not given in their proper order. Read the sentence/passage and find the most logical order of the parts between 1 and 6.</p> <p>Computers help us in many ways. P: Writing reports is easier. Q: Data is stored safely. R: Meetings happen online. S: Calculations are done fast. 6. Offices depend on them daily.</p>
PRSQ	
QRPS	
PQRS	
PQSR	
Not Answered	

Q.No: 190	<p>Transform the following sentence into active voice:</p> <p>Were you instructed by them how to fill in the form?</p>
Did you instruct them how to fill in the form?	
Was he informed how to fill in the form by them?	
Were they informing you how to fill in the form?	
Did they instruct you how to fill in the form?	

Q.No: 191	Spot the misspelt word.
Acheived	
Accessible	
Committee	
Accommodate	
Not Answered	

Q.No: 192	<p>Select the most appropriate option to improve the bold part of the sentence.</p> <p>The teacher asked that who was absent.</p>
that whom	
which student	
who	
whose	

Q.No: 193	<p>Select the most appropriate option to fill in the blank.</p> <p>He congratulated me ____ my success.</p>
of	
of	
at	
on	

Q.No: 194	<p>In the following question, a sentence has been given in Indirect Speech. Choose the correct Direct Speech form.</p> <p>The analyst stated that inflation could have been controlled if monetary policies had been revised earlier.</p>
-----------	---

The analyst stated, "Inflation could have been controlled if monetary policies had been revised earlier."

The analyst stated, "Inflation could be controlled if monetary policies were revised earlier."

The analyst stated, "Inflation had been controlled if monetary policies had been revised earlier."

The analyst stated, "Inflation can be controlled if monetary policies are revised earlier."

Q.No: 195 Choose the correctly spelt word:

Entreprenure

Entroprenure

Entrepreneur

Enterprenuer

Q.No: 196 Select the correct active form.
"Why was the match postponed by the organizers?"

Why have the organizers postponed the match?

Why do the organizers postpone the match?

Why did the organizers postpone the match?

Why are the organizers postponing the match?

Q.No: 197 Arrange the sentence parts:
(A) read (B) the instructions (C) before filling (D) carefully

DACE

BACD

BCAD

BDCA

Q.No: 198 Select the most appropriate homonym.
The old man could barely **hear**.

Hair

Heater

Smell

See

Q.No: 199 Select the most appropriate option to fill in the blank.
The boy was punished ____ his disobedience.

in

for

to

at

Q.No: 200	Find the misspelt word.
Beligerant	
excellent	
existence	
Belligerent	

KD Job Updates



SSC ONLINE EXAMINATION

CANDIDATE RESPONSE SHEET/GRIEVANCE SYSTEM

[View Your Responses](#)[Click Here Grievance About Question](#)[Click Here View Grievance Questions](#)Admin loggedin.[[Logout](#)]

Exam Name : Steno Grade C and D ▼
Test Date : 08 Aug 2025
Test Time : 09:00 AM
Centre : RJJAI080_MAHARISHI ARVIND INSTITUTE OF ENGINEERING & TECHNOLOGY_300408

Correct Option selected Wrong Option selected Correct Option Not Answered

PART - A (General Intelligence & Reasoning)

Q.No: 1 If + = -, - = *, * = /, / = +; then,
what is $6 + (4 * 2) - 3 / 1$?

यदि + = -, - = *, * = /, / = +; तो,
 $6 + (4 * 2) - 3 / 1$ क्या है?

0
0
2
2
3
3

i
i

Q.No: 2 If South-East becomes North, then what will North-East become?

यदि दक्षिण-पूर्व, उत्तर बन जाए, तो उत्तर-पूर्व क्या बन जाएगा?

South

दक्षिण

West

पश्चिम

South-West

दक्षिण पश्चिम

North-West

उत्तर-पश्चिम

Q.No: 3 If A is the brother of B, and B is the mother of C, how is A related to C?

अगर A, B का भाई है और B, C की माँ है, तो A का C से क्या संबंध है?

Grandfather

दादा

Uncle

चाचा

Father

पिता

Brother

भाई

Q.No: 4	<p>Three of the following four pairs have the same relationship between their elements as in the case of the pair BRIGHT : 24 and hence form a group. Which one does not belong to the group?</p> <p>निम्नलिखित चार युग्मों में से तीन के तत्वों के बीच वही संबंध है जो BRIGHT : 24 युग्म के मामले में है और इसलिए वे एक समूह बनाते हैं। कौन सा युग्म इस समूह से संबंधित नहीं है?</p>
	SMART : 21
	SMART : 21
	SHARP : 20
	SHARP : 20
	QUICK : 20
	QUICK : 20
	BRAINY : 24
	BRAINY : 24

Q.No: 5	<p>A word-and-number arrangement machine rearranges a given input following a specific rule in each step. The rule involves moving the alphabetically smallest word to the leftmost side and the numerically largest number to the rightmost side in each step. The process continues until all words are arranged in alphabetical order at the left end, and all numbers in descending order at the right end.</p> <p>Based on the pattern, answer the questions that follow the given input.</p> <p>Input: Volcano 37 19 Ash 50 Smoke 90 Dust 28</p> <p>Question: What is the sequence of numbers in Step II?</p> <p>एक शब्द-और-संख्या व्यवस्था मशीन प्रत्येक चरण में एक विशिष्ट नियम का पालन करते हुए दिए गए इनपुट को पुनर्व्यवस्थित करती है। इस नियम में प्रत्येक चरण में वर्णमाला के अनुसार सबसे छोटे शब्द को सबसे बाईं ओर और संख्यात्मक रूप से सबसे बड़ी संख्या को सबसे दाईं ओर ले जाना शामिल है। यह प्रक्रिया तब तक जारी रहती है जब तक कि सभी शब्द बाईं ओर वर्णमाला क्रम में और सभी संख्याएँ दाईं ओर अवरोही क्रम में व्यवस्थित न हो जाएँ। इस पैटर्न के आधार पर, दिए गए इनपुट के बाद आने वाले प्रश्नों के उत्तर दीजिए।</p> <p>इनपुट: ज्वालामुखी 37 19 राख 50 धुआँ 90 धूल 28</p> <p>प्रश्न: चरण II में संख्याओं का क्रम क्या है?</p>
	19 28 37 50 90
	19 28 37 50 90
	80 50 37 28 19
	80 50 37 28 19
	50 37 28 19 90
	50 37 28 19 90
	90 50 37 28 19
	90 50 37 28 19

Q.No: 6	<p>A bag has 4 red and 6 blue balls. What is the probability of drawing a red ball?</p> <p>एक थैले में 4 लाल और 6 नीली गेंदें हैं। लाल गेंद निकलने की प्रायिकता क्या है?</p>
	0.4
	0.4
	0.3
	0.3
	0.5
	0.5
	0.6
	0.6

Q.No: 7	<p>In each question below, two pairs of letters are given. The first pair has a specific relationship between its letters. Identify the relationship and choose the correct option that completes the second pair in the same way.</p> <p>AD : CF :: EH : ?</p> <p>नीचे दिए गए प्रत्येक प्रश्न में अक्षरों के दो युग्म दिए गए हैं। पहले युग्म के अक्षरों के बीच एक विशिष्ट संबंध है। संबंध पहचानिए और उस सही विकल्प का चयन कीजिए जो दूसरे युग्म को भी इसी प्रकार पूरा करता है।</p> <p>AD : CF :: EH : ?</p>
	HJ
	HJ
	IK
	IK
	FI
	FI



Q.No: 8	Complete the following series: C, E, H, L, Q, ? निम्नलिखित श्रृंखला को पूरा करें: C, E, H, L, Q, ?
W	
W	
X	
X	
U	
U	
V	
V	

Q.No: 9	In a certain language: FLOW = GMRZ Then what is the code for WOLF ? एक निश्चित भाषा में: FLOW = GMRZ तो WOLF के लिए कोड क्या है?
ZRNG	
ZRNG	
ZRMG	
ZRMG	
ZQMG	
ZQMG	
ZNMG	
ZNMG	

Q.No: 10	What number will be present in place of the question mark?: 5, 24, 61, 122, 217, ? प्रश्नवाचक चिन्ह के स्थान पर कौन सी संख्या आएगी?: 5, 24, 61, 122, 217, ?
331	
331	
340	
340	
342	
342	
330	
330	

Q.No: 11	Complete the following series: HQMR, IRLQ, JSKP, KTJO, ? निम्नलिखित श्रृंखला को पूरा करें: HQMR, IRLQ, JSKP, KTJO, ?
LUIN	
LUIN	
MUJN	
MUJN	
LUJO	
LUJO	
MUIO	
MUIO	

Q.No: 12	In each of the following questions, two numbers are given which follow a certain logical or arithmetic relationship. Identify the same pattern and apply it to find the missing number in the second pair. Choose the correct option from the given alternatives. 23145 : 45367 :: 41235 : ? निम्नलिखित प्रत्येक प्रश्न में दो संख्याएँ दी गई हैं जो एक निश्चित तार्किक या अंकगणितीय संबंध का पालन करती हैं। उसी पैटर्न की पहचान कीजिए और दूसरे जोड़े में लुप्त संख्या ज्ञात करने के लिए उसका प्रयोग कीजिए। दिए गए विकल्पों में से सही विकल्प चुनिए। 23145 : 45367 :: 41235 : ?
62457	
62457	
63457	

63457
63257
63257
54376
54376

Q.No: 13	<p>If + means -, ÷ means +, - means ×, and × means ÷, then, what is $15 - 4 \div 6 + 12$?</p> <p>यदि + का अर्थ - है, ÷ का अर्थ + है, - का अर्थ × है, और × का अर्थ ÷ है, तो $15 - 4 \div 6 + 12$ क्या है?</p>
60	
60	
56	
56	
54	
54	
58	
58	

Q.No: 14	<p>Given the situation below, which of the following is the most responsible course of action for you?</p> <p>While driving, you witness a minor fender bender in a parking lot. One car, which appears to be at fault, quickly drives away without stopping. The other car's driver is still in their vehicle, looking shaken and surveying the damage.</p> <p>Question: Given this situation, which of the following is the most ethical and responsible action?</p> <p>यहाँ दी गई स्थिति को देखते हुए, आपके लिए सबसे नैतिक और जिम्मेदार कार्य कौन सा होगा?</p> <p>गाड़ी चलते समय, आप एक पार्किंग स्थल में एक मामूली टक्कर (फेंडर बेंडर) के गवाह बनते हैं। एक कार, जो गलती पर दिखती है, बिना रुके तेजी से चली जाती है। दूसरी कार का ड्राइवर अभी भी अपने वाहन में है, घबराया हुआ दिख रहा है और नुकसान का जायजा ले रहा है।</p> <p>प्रश्न: इस स्थिति को देखते हुए, निम्नलिखित में से कौन सा सबसे नैतिक और जिम्मेदार कार्य है?</p> <p>Assume it's a minor incident and continue driving, as it doesn't involve you directly.</p> <p>यह मान लें कि यह एक छोटी-मोटी घटना है और गाड़ी चलाना जारी रखें, क्योंकि इसमें आप सीधे तौर पर शामिल नहीं हैं।</p> <p>Pull over safely, check on the driver of the damaged car, and offer to provide your contact information and what you witnessed.</p> <p>सुरक्षित रूप से गाड़ी रोके, क्षतिग्रस्त कार के ड्राइवर की खेरियत पूछें, और उन्हें अपना संपर्क विवरण तथा जो कुछ आपने देखा, वह बताने की पेशकश करें।</p> <p>Immediately call emergency services, even if there are no apparent injuries.</p> <p>तत्काल आपातकालीन सेवाओं को कॉल करें, भले ही कोई स्पष्ट चोटें न हों।</p> <p>Chase after the car that drove away to get their license plate number and confront them.</p> <p>जो कार चली गई है, उसका पीछा करें ताकि उसका लाइसेंस प्लेट नंबर मिल सके और उससे सामना करें।</p>
----------	--

Q.No: 15	<p>Five students – P, Q, R, S, and T – are sitting in a circle facing the center. P is to the immediate right of Q. R is between P and S.</p> <p>Who is sitting to the immediate left of T?</p> <p>पाँच छात्र - P, Q, R, S और T - केंद्र की ओर मुँह करके एक वृत्त में बैठे हैं। P, Q के ठीक दाईं ओर है। R, P और S के बीच में है।</p> <p>T के ठीक बाईं ओर कौन बैठा है?</p>
Q	
Q	
R	
R	
S	
S	
P	
P	

Q.No: 16	<p>A number when divided by 5 leaves a remainder 3. What is the remainder when its square is divided by 5?</p> <p>एक संख्या को 5 से भाग देने पर शेषफल 3 बचता है। उसके वर्ग को 5 से भाग देने पर शेषफल क्या होगा?</p>
----------	---

3
3
1
1
4
4
2
2

Q.No: 17 Read the following statement carefully and identify the conclusion that follows.
Statement: The school has made computer training compulsory for all students.
Conclusions:
I. Computer knowledge is essential in the modern world.
II. All students will become computer experts.

निम्नलिखित कथन को ध्यान से पढ़ें और निष्कर्ष निकालें।
कथन: स्कूल ने सभी छात्रों के लिए कंप्यूटर प्रशिक्षण अनिवार्य कर दिया है।
निष्कर्ष:
I. आधुनिक दुनिया में कंप्यूटर ज्ञान ज़रूरी है।
II. सभी छात्र कंप्यूटर विशेषज्ञ बनेंगे।

Only Conclusion I follows

केवल निष्कर्ष I अनुसरण करता है

Both I and II follow

I और II दोनों अनुसरण करते हैं

Neither I nor II follows

न तो I और न ही II अनुसरण करता है

Only Conclusion II follows

केवल निष्कर्ष II अनुसरण करता है

Q.No: 18 Six persons – A, B, C, D, E, and F – are sitting in two rows, three in each, facing each other.
A faces D.
B is to the left of A.
F faces the person who is to the right of B.
C does not face A.
Who faces C?

छह व्यक्ति - A, B, C, D, E और F - दो पंक्तियों में, प्रत्येक पंक्ति में तीन-तीन, एक-दूसरे के सम्मुख बैठे हैं।
A, D के सम्मुख है।
B, A के बाईं ओर है।
F, B के दाईं ओर बैठे व्यक्ति के सम्मुख है।
C, A के सम्मुख नहीं है।
C के सम्मुख कौन है?

E
E
D
D
A
A

Q.No: 19 Identify the odd group:
विषम समूह की पहचान करें:

22
22
44
44
33

Q.No: 20 Choose the odd one out:

विषम चुनें:

579

579

468

468

234

234

936

936

Q.No: 21 Seven persons sit in a circle, all facing outward.

P sits to the immediate right of Q.

R is second to the left of Q.

S is between P and T.

U is opposite R.

Who is to the immediate left of T?

सात व्यक्ति एक वृत्त में बाहर की ओर मुख करके बैठे हैं।

P, Q के ठीक दाईं ओर बैठा है।

R, Q के बाईं ओर दूसरे स्थान पर है।

S, P और T के बीच में है।

U, R के विपरीत है।

T के ठीक बाईं ओर कौन है?

P

P

Q

Q

U

U

S

S

Not Answered

Q.No: 22 Read the following **statements** and **conclusions** carefully. Assume the statements to be absolutely true, even if they contradict known facts. Based only on the information given in the statements, decide which of the conclusions logically follow.

Statements:

Some students are clever.

All clever people are honest.

No honest person is lazy.

Conclusions:

(1) Some students are honest.

(2) No student is lazy.

(3) Some clever people are not lazy.

(4) Some honest people are not students.

निम्नलिखित **कथनों** और **निष्कर्षों** को ध्यानपूर्वक पढ़ें। कथनों को पूर्णतः सत्य मानिए, भले ही वे ज्ञात तथ्यों का खंडन करते हों। केवल कथनों में दी गई जानकारी के आधार पर, निर्णय कीजिए कि कौन सा निष्कर्ष तार्किक रूप से अनुसरण करता है।

कथन:

कुछ छात्र चतुर होते हैं।

सभी चतुर लोग ईमानदार होते हैं।

कोई भी ईमानदार व्यक्ति आलसी नहीं होता।

निष्कर्ष:

(1) कुछ छात्र ईमानदार होते हैं।

(2) कोई भी छात्र आलसी नहीं होता।

(3) कुछ चतुर लोग आलसी नहीं होते।

(4) कुछ ईमानदार लोग छात्र नहीं होते।

All (1), (2), (3), and (4) follow

सभी (1), (2), (3), और (4) अनुसरण करते हैं

Only (1), (3), and (4) follow

केवल (1), (3), और (4) अनुसरण करते हैं

Only (2) and (4) follow

केवल (2) और (4) अनुसरण करते हैं

Only (1) and (3) follow

केवल (1) और (3) अनुसरण करते हैं

Q.No: 23 Arrange in a logical sequence:
1. College, 2. Admission, 3. Application, 4. Degree, 5. Result

तार्किक क्रम में व्यवस्थित करें:

1. कॉलेज, 2. प्रवेश, 3. आवेदन, 4. डिग्री, 5. परिणाम

3, 2, 1, 5, 4

3, 2, 1, 5, 4

3, 1, 2, 4, 5

3, 1, 2, 4, 5

2, 3, 1, 4, 5

2, 3, 1, 4, 5

3, 2, 1, 4, 5

3, 2, 1, 4, 5

Q.No: 24 Arrange in logical order:
1. Income, 2. Education, 3. Employment, 4. Interview, 5. Application

तार्किक क्रम में व्यवस्थित करें:

1. आय, 2. शिक्षा, 3. रोजगार, 4. साक्षात्कार, 5. आवेदन

2, 5, 4, 3, 1

2, 5, 4, 3, 1

5, 4, 3, 2, 1

5, 4, 3, 2, 1

1, 2, 3, 4, 5

1, 2, 3, 4, 5

2, 3, 4, 5, 1

2, 3, 4, 5, 1

Q.No: 25 In each of the following question, a pair of words (letter sequences) is given on the left-hand side of the double colon (::), which follows a certain alphabetical pattern. Identify the logic in the first pair and apply the same logic to the third word to find the correct corresponding word from the options.

LIP : OHR :: JAR : ?

निम्नलिखित प्रत्येक प्रश्न में, दोहरे कोलन (::) के बाईं ओर शब्दों का एक युग्म (अक्षर क्रम) दिया गया है, जो एक निश्चित वर्णमाला क्रम का अनुसरण करता है। पहले युग्म में तर्क पहचानिए और विकल्पों में से सही संगत शब्द ज्ञात करने के लिए उसी तर्क को तीसरे शब्द पर लागू कीजिए।

LIP : OHR :: JAR : ?

OSP

OSP

LYQ

LYQ

NAS

NAS

Q.No: 26 If $+$ = $*$, $-$ = $+$, $*$ = $-$, $/$ = $/$; then, what is $(3 + 4) * 2 - 1 / 5$?

यदि $+$ = $*$, $-$ = $+$, $*$ = $-$, $/$ = $/$; तो, $(3 + 4) * 2 - 1 / 5$ क्या है?

11

11

10.2

10.2

12

12

9

9

Not Answered

Q.No: 27 2384, 1592, 3756, 4298, 3629 - which is inconsistent?

2384, 1592, 3756, 4298, 3629 - कौन सा असंगत है?

3629

3629

3756

3756

1592

1592

2384

2384

Not Answered

Q.No: 28 Class has 105 students. Boys are 40%, girls 60%. Shivani is 30th from top, 20 girls ahead. Find number of girls behind her.

कक्षा में 105 छात्र हैं। लड़के 40% और लड़कियाँ 60% हैं। शिवानी ऊपर से 30वें स्थान पर है, उससे 20 लड़कियाँ आगे हैं। उसके पीछे लड़कियों की संख्या ज्ञात कीजिए।

42

42

45

45

44

44

43

43

Q.No: 29 Five friends – A, B, C, D, and E – sit around a circular table facing the center.

B sits to the immediate right of A.

C is to the immediate right of B.

D is to the immediate left of E.

E is opposite A.

Question: Who is sitting to the immediate left of C?

पाँच मित्र – A, B, C, D, और E – एक गोलाकार मेज के चारों ओर केंद्र की ओर मुँह करके बैठे हैं।

B, A के ठीक दाएँ बैठा है।

C, B के ठीक दाएँ है।

D, E के ठीक बाएँ है।

E, A के विपरीत है।

प्रश्न: C के ठीक बाएँ कौन बैठा है?

A

A

B

B

E

E

D

D

Q.No: 30	<p>Read the following statements and conclusions carefully. Assume the statements are absolutely true, even if they contradict commonly known facts. Based solely on the statements, determine which of the conclusions logically follow.</p> <p>Statements: All cars are vehicles. Some vehicles are bikes. No bike is a truck.</p> <p>Conclusions: (1) Some vehicles are not trucks. (2) No car is a bike. (3) Some cars are bikes. (4) Some trucks are vehicles.</p> <p>निम्नलिखित कथनों और निष्कर्षों को ध्यानपूर्वक पढ़ें। मान लें कि कथन पूर्णतः सत्य हैं, भले ही वे सामान्यतः ज्ञात तथ्यों का खंडन करते हों। केवल कथनों के आधार पर, निर्धारित करें कि कौन सा निष्कर्ष तार्किक रूप से अनुसरण करता है।</p> <p>कथन: सभी कारें वाहन हैं। कुछ वाहन बाइक हैं। कोई भी बाइक ट्रक नहीं है।</p> <p>निष्कर्ष: (1) कुछ वाहन ट्रक नहीं हैं। (2) कोई भी कार बाइक नहीं है। (3) कुछ कारें बाइक हैं। (4) कुछ ट्रक वाहन हैं।</p>
	Only (1) and (2) follow
	केवल (1) और (2) अनुसरण करते हैं
	Only (1), (3), and (4) follow
	केवल (1), (3), और (4) अनुसरण करते हैं
	All (1), (2), (3), and (4) follow
	सभी (1), (2), (3), और (4) अनुसरण करते हैं
	Only (1) follows
	केवल (1) अनुसरण करता है
Q.No: 31	<p>What will be the next number in the series: 1, 4, 13, 40, 121, ?</p> <p>श्रृंखला में अगला अंक क्या होगा: 1, 4, 13, 40, 121, ?</p>
	365
	365
	362
	362
	370
	370
	364
	364
Q.No: 32	<p>A word-and-number arrangement machine rearranges a given input following a specific rule in each step. The rule involves moving the alphabetically smallest word to the leftmost side and the numerically largest number to the rightmost side in each step. The process continues until all words are arranged in alphabetical order at the left end, and all numbers in descending order at the right end.</p> <p>Based on the pattern, answer the questions that follow the given input.</p> <p>Input: Panther 88 33 11 Roar Stripes 44 Animal</p> <p>Question: Which is the 1st word placed in Step 1?</p> <p>एक शब्द-और-संख्या व्यवस्था मशीन प्रत्येक चरण में एक विशिष्ट नियम का पालन करते हुए दिए गए इनपुट को पुनर्व्यवस्थित करती है। इस नियम के अनुसार, प्रत्येक चरण में वर्णमाला के अनुसार सबसे छोटे शब्द को सबसे बाईं ओर और संख्यात्मक रूप से सबसे बड़ी संख्या को सबसे दाईं ओर ले जाया जाता है। यह प्रक्रिया तब तक जारी रहती है जब तक कि सभी शब्द बाईं ओर वर्णमाला क्रम में और सभी संख्याएँ दाईं ओर अवरोही क्रम में व्यवस्थित न हो जाएँ। इस पैटर्न के आधार पर, दिए गए इनपुट के बाद आने वाले प्रश्नों के उत्तर दीजिए।</p> <p>इनपुट: पैंथर 88 33 11 गर्जन धारियों 44 जानवर</p> <p>प्रश्न: चरण 1 में पहला शब्द कौन सा है?</p>
	Stripes
	धारियों
	Panther
	पैंथर

Animal
जानवर
Roar
गर्जन

Q.No: 33	<p>Read the situation and choose the best judgment: You're traveling in a bus and notice smoke coming from the engine area. What is the best course of action?</p> <p>स्थिति को समझें और सबसे अच्छा निर्णय लें: आप बस में यात्रा कर रहे हैं और इंजन वाले हिस्से से धुआँ निकलता हुआ देखते हैं। सबसे अच्छा उपाय क्या है?</p>
----------	--

Open the emergency exit and alert others
आपातकालीन निकास खोलें और दूसरों को सचेत करें
Panic and scream
घबरा जाओ और चीखो
Stay seated and do nothing
बैठे रहो और कुछ मत करो
Wait for someone else to act
किसी और के कार्य करने की प्रतीक्षा करें

Q.No: 34	<p>A person walks 10 m North, then turns right and walks 5 m, then turns right again and walks 10 m. Where is he now from the starting point?</p> <p>एक व्यक्ति 10 मीटर उत्तर की ओर चलता है, फिर दाएँ मुड़ता है और 5 मीटर चलता है, फिर दाएँ मुड़ता है और 10 मीटर चलता है। अब वह प्रारंभिक बिंदु से कहाँ है?</p>
10 m South	
10 मीटर दक्षिण	
5 m West	
5 मीटर पश्चिम	
5 m East	
5 मीटर पूर्व	
15 m North	
15 मीटर उत्तर	

Q.No: 35

In each of the following questions, a specific relationship is given between two words. Identify the word that shares a similar semantic relationship with the given pair. Choose the most appropriate option from the four choices given below.

Glacier : Melt :: Volcano : ?

निम्नलिखित प्रत्येक प्रश्न में दो शब्दों के बीच एक विशिष्ट संबंध दिया गया है। उस शब्द की पहचान कीजिए जो दिए गए युग्म के साथ समान अर्थ संबंध रखता है। नीचे दिए गए चार विकल्पों में से सबसे उपयुक्त विकल्प चुनिए।

हिमनद : पिघलना :: ज्वालामुखी : ?

Flow

प्रवाह

Explode

विस्फोट

Erupt

फूटना

Burn

जलाना

Q.No: 36	What number will be present in place of the question mark?: 13, 17, 25, 41, 73, ? प्रश्नवाचक चिन्ह के स्थान पर कौन सी संख्या आएगी?: 13, 17, 25, 41, 73, ?
125	
125	
97	
97	
137	
137	

Q.No: 37 Complete the analogy: PQR : LMN :: GHI : ?

सादृश्य पूरा करें: PQR : LMN :: GHI : ?

EFG

EFG

BCD

BCD

BCD

ABC

ABC

Q.No: 38 Four of the following five are alike in a certain way and hence form a group. Which is the one that does not belong to that group?

1. ROSE : TQSC
2. LION : NKOL
3. BEAR : DAWT
4. CAND : ECNB
5. TIGER : VKGCP

निम्नलिखित पाँच में से चार एक निश्चित तरीके से एक जैसे हैं और इसलिए एक समूह बनाते हैं। वह कौन सा है जो उस समूह से संबंधित नहीं है?

1. ROSE : TQSC
2. LION : NKOL
3. BEAR : DAWT
4. CAND : ECNB
5. TIGER : VKGCP

BEAR : DAWT

BEAR : DAWT

ROSE : TQSC

ROSE : TQSC

TIGER : VIGHW

TIGER : VIGHW

LION : NKOM

LION : NKOM

Q.No: 39 Pointing to a girl in a photograph, Amit said, "She is the daughter of the only sister of my father." How is the girl related to Amit?

एक तस्वीर में एक लड़की की ओर इशारा करते हुए अमित ने कहा, "वह मेरे पिता की इकलौती बहन की बेटी है।" वह लड़की अमित से किस प्रकार संबंधित है?

Niece

भतीजी

Aunt

चाची

दादाजी

चचेरी

Sister

बहन

Q.No: 40 You're leading a group project and one member is not contributing. What is the best decision to resolve the issue?

आप एक समूह परियोजना का नेतृत्व कर रहे हैं और एक सदस्य योगदान नहीं दे रहा है। इस समस्या को हल करने के लिए सबसे अच्छा निर्णय क्या है?

Do the work yourself

काम खुद करना

Remove the person from the group

व्यक्ति को समूह से निकालना

Talk to the member and understand their reasons

सदस्य से बात करना और उनके कारणों को समझना

Complain directly to the teacher without discussion

बिना चर्चा के सीधे शिक्षक से शिकायत करना

Q.No: 41	<p>In a 90-student class, girls are double boys. If Rahul is 20th from top and 15 girls are ahead of him, find number of boys behind him.</p> <p>90 छात्रों की एक कक्षा में, लड़कियाँ लड़कों से दोगुनी हैं। यदि राहुल ऊपर से 20वें स्थान पर है और उससे आगे 15 लड़कियाँ हैं, तो उसके पीछे लड़कों की संख्या ज्ञात कीजिए।</p>
28	
28	
26	
26	
24	
24	
25	
25	

Q.No: 42	<p>Input: cat 28 dog 43 bat 59</p> <p>Step 1: 59 cat 28 dog 43 bat Step 2: 59 bat cat 28 dog 43 Step 3: 59 bat 43 cat 28 dog Step 4: 59 bat 43 dog cat 28</p> <p>What will be the final step for the input?</p> <p>इनपुट: cat 28 dog 43 bat 59</p> <p>चरण 1: 59 cat 28 dog 43 bat चरण 2: 59 bat cat 28 dog 43 चरण 3: 59 bat 43 cat 28 dog चरण 4: 59 bat 43 dog cat 28</p> <p>इनपुट के लिए अंतिम चरण क्या होगा?</p>
59 cat 43 dog 28 bat	
59 cat 43 dog 28 bat	
The output is already complete at Step 4	
चरण 4 पर आउटपुट पहले ही पूरा हो चुका है	
59 bat 43 dog 28 cat	
59 bat 43 dog 28 cat	
59 dog 43 bat 28 cat	
59 dog 43 bat 28 cat	

Q.No: 43	<p>A delivery agent starts from his warehouse and drives 8 km North, then 6 km East, and then 3 km South. He then makes a U-turn, returns 3 km North, continues 4 km further North, and finally takes a left turn and drives 6 km. Where is he now in relation to the starting point?</p> <p>एक डिलीवरी एजेंट अपने गोदाम से गाड़ी चलाना शुरू करता है और 8 किमी उत्तर, फिर 6 किमी पूर्व और फिर 3 किमी दक्षिण की ओर गाड़ी चलाता है। फिर वह यू-टर्न लेता है, 3 किमी उत्तर की ओर लौटता है, 4 किमी और उत्तर की ओर बढ़ता है, और अंत में बाएँ मुड़कर 6 किमी गाड़ी चलाता है। अब वह शुरुआती बिंदु के सापेक्ष कहाँ है?</p>
14 km North	
14 किमी उत्तर	
12 km North	
12 किमी उत्तर	
6 km East	
6 किमी पूर्व	
11 km South	
11 किमी दक्षिण	

Q.No: 44	<p>Complete the following series: M, O, R, V, ?</p> <p>निम्नलिखित श्रृंखला को पूरा करें: M, O, R, V, ?</p>
Z	

Z
A
A
X
X
Y
Y

Q.No: 45	If 'TABLE' is coded as 40 and 'CHAIR' as 39, what is the code for 'SOFA'?
	अगर 'TABLE' को 40 और 'CHAIR' को 39 के रूप में कोड किया जाता है, तो 'SOFA' के लिए कोड क्या है?
40	
40	
41	
41	
39	
39	
37	
37	

Q.No: 46	A man sees smoke coming from a building and hears people shouting. What should he do first?
	एक आदमी एक इमारत से धुआँ निकलता देखता है और लोगों को चिल्लाते हुए सुनता है। उसे सबसे पहले क्या करना चाहिए?
Run away immediately	
तुरंत भाग जाओ	
Try to enter the building	
इमारत में प्रवेश करने का प्रयास करें	
Call emergency services	
आपातकालीन सेवाओं को कॉल करें	
Ignore and move on	
अनदेखा करें और आगे बढ़ें	

Q.No: 47	In a row of students, Priya is 9 th from the left and 14 th from the right. How many students are there in the row?
	छात्रों की एक पंक्ति में, प्रिया बाएं से 9 th और दाएं से 14 th है। पंक्ति में कितने छात्र हैं?
22	
22	
23	
23	
24	
24	
21	
21	

Q.No: 48	In a code, 'APPLE' is written as 'BQOKF', then how is 'GRAPE' written in the same code? एक कोड में, 'APPLE' को 'BQOKF' लिखा जाता है, तो उसी कोड में 'GRAPE' को कैसे लिखा जाएगा?
HQBPF	
HQBPF	
HRAQF	
HRAQF	
GQAOE	
GQAOE	
HSZOI	
HSZOI	

Q.No: 49	<p>Statement: Innovation requires risk-taking, but excessive risks without planning can lead to failure.</p> <p>Conclusion I: Risk-taking alone does not guarantee innovation.</p> <p>Conclusion II: Planning is always necessary for successful innovation.</p> <p>Which conclusion follows?</p> <p>कथन: नवाचार के लिए जोखिम उठाना आवश्यक है, लेकिन योजना के बिना अत्यधिक जोखिम विफलता का कारण बन सकते हैं।</p> <p>निष्कर्ष I: केवल जोखिम उठाना नवाचार की गारंटी नहीं देता है।</p> <p>निष्कर्ष II: सफल नवाचार के लिए योजना हमेशा आवश्यक है।</p> <p>कौन सा निष्कर्ष अनुसरण करता है?</p>
	Both conclusion I and II follow
	निष्कर्ष I और II दोनों अनुसरण करते हैं।
	Neither conclusion I nor II follows
	न तो निष्कर्ष I और न ही II अनुसरण करता है।
	Only conclusion I follows
	केवल निष्कर्ष I अनुसरण करता है।
	Only conclusion II follows
	केवल निष्कर्ष II अनुसरण करता है।

Q.No: 50	<p>Circle, Triangle, Cube, Square – which is the odd one?</p> <p>वृत्त, त्रिभुज, घन, वर्ग - इनमें से कौन सा विषम है?</p>
	Triangle
	त्रिभुज
	Circle
	वृत्त
	Cube
	घन
	Square
	वर्ग

PART - B (General Awareness)

Q.No: 51	<p>Name the port that is privately owned by the Adani Group?</p> <p>वह बंदरगाह जिसका स्वामित्व निजी क्षेत्र की अडानी समूह के पास है, कौन-सा है?</p>
	Visakhapatnam Port, Andhra Pradesh
	विशाखापत्तनम बंदरगाह, आंध्र प्रदेश
	Chennai Port, Tamil Nadu
	चेन्नई बंदरगाह, तमिलनाडु
	Kandla Port, Gujarat
	कांडला बंदरगाह, गुजरात
	Mundra Port, Gujarat
	मुंद्रा बंदरगाह, गुजरात

Q.No: 52	<p>Consider the land reforms implemented in India between 1947 and 1990. What was one of the main objectives of these reforms?</p> <p>भारत में 1947 से 1990 के बीच लागू किए गए भूमि सुधारों पर विचार करें। इन सुधारों का एक मुख्य उद्देश्य क्या था?</p>
	To consolidate large landholdings in the hands of a few individuals.
	कुछ व्यक्तियों के हाथों में बड़ी भूमि को समेकित करना।
	To encourage the widespread adoption of mechanized farming techniques.
	मशीनीकृत कृषि तकनीकों को व्यापक रूप से अपनाने के लिए प्रोत्साहित करना।
	To reduce the concentration of land ownership and protect the interests of small farmers.
	भूमि स्वामित्व के संकेन्द्रण को कम करना और छोटे किसानों के हितों की रक्षा करना।

To promote the cultivation of cash crops for export.

निर्यात के लिए नकदी फसलों की खेती को बढ़ावा देना।

Q.No: 53 In each of the following questions, a statement labeled Assertion (A) is given, followed by a statement labeled Reason (R).
Assertion (A): Migration can be driven by negative and positive circumstances.
Reason (R): Push factors make individuals migrate away from a region, whereas pull factors draw individuals to a region.

निम्नलिखित प्रत्येक प्रश्न में, अभिकथन (A) नामक एक कथन दिया गया है, जिसके बाद कारण (R) नामक एक कथन दिया गया है।

अभिकथन (A): प्रवासन नकारात्मक और सकारात्मक परिस्थितियों से प्रेरित हो सकता है।

कारण (R): पुश कारक व्यक्तियों को एक क्षेत्र से दूर ले जाते हैं, जबकि पुल कारक व्यक्तियों को एक क्षेत्र की ओर खींचते हैं।

A is false, but R is true.

A असत्य है, लेकिन R सत्य है।

Both A and R are true, but R is not the correct explanation of A.

A और R दोनों सत्य हैं, लेकिन R, A का सही स्पष्टीकरण नहीं है।

Both A and R are true, and R is the correct explanation of A.

A और R दोनों सत्य हैं, तथा R, A का सही स्पष्टीकरण है।

A is true, but R is false.

A सत्य है, लेकिन R असत्य है।

Q.No: 54 Consider the following statements regarding the evolution of India's major drainage systems:

- 1.The ancient Indo-Brahma river is believed to have split into three major drainage systems over time.
- 2.The Ganga and its Himalayan tributaries represent the central drainage system.
- 3.The western drainage system consists of the Brahmaputra and its tributaries.

Which of the above statements is/are correct?

भारत की प्रमुख जल निकासी प्रणालियों के विकास के संबंध में निम्नलिखित कथनों पर विचार कीजिए:

1. ऐसा माना जाता है कि प्राचीन इंडो-ब्रह्मा नदी समय के साथ तीन प्रमुख जल निकासी प्रणालियों में विभाजित हो गई।
2. गंगा और उसकी हिमालयी सहायक नदियाँ केंद्रीय जल निकासी प्रणाली का प्रतिनिधित्व करती हैं।
3. पश्चिमी जल निकासी प्रणाली में ब्रह्मपुत्र और उसकी सहायक नदियाँ शामिल हैं।

उपरोक्त कथनों में से कौन सा सही है/हैं?

Only 2 and 3

केवल 2 और 3

All 1, 2 and 3 are correct

सभी 1, 2 और 3 सही हैं

Only 1 and 3

केवल 1 और 3

Only 1 and 2

केवल 1 और 2

Q.No: 55 Who was the leader that defeated Krishnadevaraya of Vijayanagara in the Battle of Raichur?

रायचूर के युद्ध में कृष्णदेव राय को पराजित करने वाला प्रमुख सेनापति कौन था?

Alauddin Khilji

अलाउद्दीन खिलजी

Ahmed Shah Bahmani

अहमद शाह बहमनी

Ibrahim Lodi

इब्राहीम लोदी

Adil Shah of Bijapur

बीजापुर के आदिल शाह

Q.No: 56 In each of the following questions, a statement labeled Assertion (A) is given, followed by a statement labeled Reason (R).

Assertion (A): Migrants who enter a new country or region are called immigrants.

Reason (R): Emigrants are people who leave their country to settle elsewhere.

निम्नलिखित प्रत्येक प्रश्न में, अभिकथन (A) नामक एक कथन दिया गया है, जिसके बाद कारण (R) नामक एक कथन दिया गया है।

अभिकथन (A): जो प्रवासी किसी नए देश या क्षेत्र में प्रवेश करते हैं, उन्हें अप्रवासी कहा जाता है।

कारण (R): प्रवासी वे लोग होते हैं जो अपना देश छोड़कर कहीं और बस जाते हैं।

Both A and R are true, but R is not the correct explanation of A.

A और R दोनों सत्य हैं, लेकिन R, A का सही स्पष्टीकरण नहीं है।

Both A and R are true, and R is the correct explanation of A.

A और R दोनों सत्य हैं, तथा R, A का सही स्पष्टीकरण है।

A is true, but R is false.

A सत्य है, लेकिन R असत्य है।

A is false, but R is true.

A असत्य है, लेकिन R सत्य है।

Q.No: 57 Which list allows both Centre and State to legislate on the same subject?

कौन-सी सूची में केंद्र और राज्य दोनों एक ही विषय पर कानून बना सकते हैं?

Reserved List

आरक्षित सूची

Union List

संघ सूची

Concurrent List

समवर्ती सूची

State List

राज्य सूची

Q.No: 58 Given below are assertion and reason, read the statements and choose the correct option.

Assertion: British capital accumulation in the 18th century was reinvested in industrial development.

Reason: The capital was largely controlled by merchants and industrialists instead of the feudal aristocracy.

नीचे कथन और कारण दिए गए हैं, कथनों को पढ़ें और सही विकल्प चुनें।

कथन: 18वीं शताब्दी में ब्रिटिश पूंजी संचय को औद्योगिक विकास में पुनर्निवेशित किया गया था।

कारण: पूंजी पर सामंती अभिजात वर्ग के बजाय व्यापारियों और उद्योगपतियों का नियंत्रण था।

Both Assertion (A) and Reason (R) are true, and R is not the correct explanation of A.

अभिकथन (A) और कारण (R) दोनों सत्य हैं, तथा R, A का सही स्पष्टीकरण नहीं है।

A is false, but R is true.

A असत्य है, लेकिन R सत्य है।

A is true, but R is false.

A सत्य है, लेकिन R असत्य है।

Both Assertion (A) and Reason (R) are true, and R is the correct explanation of A.

अभिकथन (A) और कारण (R) दोनों सत्य हैं, तथा R, A का सही स्पष्टीकरण है।

Q.No: 59 Which key reform in 1991 specifically addressed the inefficiency of public sector enterprises and promoted competition in industrial production?

1991 में किस प्रमुख सुधार ने विशेष रूप से सार्वजनिक क्षेत्र के उद्यमों की अकुशलता को संबोधित किया और औद्योगिक उत्पादन में प्रतिस्पर्धा को बढ़ावा दिया?

Privatization of profit-making PSUs

लाभ कमाने वाले सार्वजनिक उपक्रमों का निजीकरण

Fiscal Responsibility Act

राजकोषीय उत्तरदायित्व अधिनियम

Complex Industrial Licensing process

जटिल औद्योगिक लाइसेंसिंग प्रक्रिया

Public Distribution System Reform

सार्वजनिक वितरण प्रणाली सुधार

Q.No: 60 Who is the author of "The God of Small Things"?

"द गॉड ऑफ़ स्मॉल थिंग्स" का लेखक कौन है?

Chimamanda Ngozi Adichie

चिमामांडा नगोजी अदिची

Neil Gaiman

नील गिमान

Arundhati Roy

अरुंधति राय

Mo Yan

मो यान

Q.No: 61 How does the Faint Young Sun paradox challenge our understanding of early Earth's climate?

मंद युवा सूर्य विरोधाभास प्रारंभिक पृथ्वी की जलवायु के बारे में हमारी समझ को किस प्रकार चुनौती देता है?

It implies there was no liquid water on early Earth.

इसका तात्पर्य यह है कि प्रारंभिक पृथ्वी पर तरल जल नहीं था।

It proves the Moon once had an atmosphere.

इससे यह सिद्ध होता है कि चंद्रमा पर कभी वायुमंडल था।

It suggests that early solar output was too weak to prevent global freezing.

इससे पता चलता है कि प्रारंभिक सौर ऊर्जा इतनी कमजोर थी कि वैश्विक हिमीकरण को रोका नहीं जा सका।

It shows Earth was too hot due to excessive solar radiation.

इससे पता चलता है कि अत्यधिक सौर विकिरण के कारण पृथ्वी बहुत गर्म थी।

Q.No: 62 Read the below statements related to Concurrent List laws:

1. Union law overrides state law in conflict.

2. State law can prevail if reserved and assented by President.

Which is/are correct?

समवर्ती सूची के कानूनों से संबंधित नीचे दिए गए कथनों को पढ़ें:

1. संघ का कानून, संघर्ष की स्थिति में राज्य के कानून पर हावी होता है।

2. राज्य का कानून तभी प्रभावी हो सकता है जब राष्ट्रपति द्वारा उसे सुरक्षित रखा जाए और उसकी स्वीकृति दी जाए।

कौन सा/से सही है/हैं?

Only 2

केवल 2

Only 1

केवल 1

Both 1 and 2

1 और 2 दोनों

Neither 1 nor 2

न तो 1 और न ही 2

Q.No: 63 Which of the following statements regarding the implementation challenges of UCC is **most accurate** in the context of judicial interpretations and recent state-level developments?

यूसीसी के कार्यान्वयन चुनौतियों के संबंध में निम्नलिखित में से कौन सा कथन न्यायिक व्याख्याओं और हाल के राज्य-स्तरीय घटनाक्रमों के संदर्भ में सबसे सटीक है?

UCC is enforceable only when ratified by all religious communities through a national referendum

यूसीसी तभी लागू हो सकता है जब राष्ट्रीय जनमत संग्रह के माध्यम से सभी धार्मिक समुदायों द्वारा इसका अनुमोदन किया जाए

The Law Commission of India (2018) recommended UCC for all religions to ensure uniformity

भारतीय विधि आयोग (2018) ने एकरूपता सुनिश्चित करने के लिए सभी धर्मों के लिए समान नागरिक संहिता (यूसीसी) की सिफारिश की थी।

The Supreme Court has uniformly declared UCC as mandatory across states

सर्वोच्च न्यायालय ने सभी राज्यों में समान रूप से समान नागरिक संहिता को अनिवार्य घोषित किया है।

The UCC is already implemented in Goa and Uttarakhand through their respective legislative frameworks

गोवा और उत्तराखंड में यूसीसी को उनके संबंधित विधायी ढांचे के माध्यम से पहले ही लागू किया जा चुका है

Q.No: 64 Match the following cave sites with their architectural characteristics:

Column A-Cave Site	Column B-Architectural Feature
A. Udayagiri	1. Circular caitya with stūpa and arch
B. Guntapalle	2. Pillared veranda with cells at the back
C. Khandagiri	3. Animal-shaped single rock excavations

निम्नलिखित गुफा स्थलों का उनकी स्थापत्य विशेषताओं से मिलान कीजिए:

स्तंभ A-गुफा स्थल	स्तंभ B-वास्तुशिल्प विशेषता
A. उदयगिरि	1. स्तूप और मेहराब सहित वृत्ताकार चैत्य
B. गुंटापल्ली	2. पीछे की ओर कक्षों वाला स्तंभयुक्त बरामदा
C. खंडगिरि	3. पशु के आकार की एकल चट्टान की खुदाई

A-3, B-1, C-2

A-3, B-1, C-2

A-1, B-2, C-3

A-1, B-2, C-3

A-1, B-3, C-2

A-1, B-3, C-2

A-2, B-1, C-3

A-2, B-1, C-3

Q.No: 65 What is the boiling point of water at sea level?

समुद्र तल पर पानी का क्वथनांक क्या है?

208.4°F

208.4°F

217.4°F

217.4°F

212°F

212°F

203°F

203°F

Q.No: 66 Which of the following statements is correct about Urs at Ajmer Sharif?

अजमेर शरीफ के उर्स के बारे में निम्नलिखित में से कौन सा कथन सही है?

It follows the lunar calendar and marks the saint's death.

यह चंद्र कैलेंडर का अनुसरण करता है और संत की मृत्यु का प्रतीक है।

It is celebrated annually based on the solar calendar.

यह सौर कैलेंडर के आधार पर प्रतिवर्ष मनाया जाता है।

It marks the birth anniversary of Khwaja Moinuddin Chishti.

यह ख्वाजा मोइनुद्दीन चिश्ती की जयंती का प्रतीक है।

It is held only once every five years during Ramzan.

यह हर पांच साल में केवल एक बार रमजान के दौरान आयोजित किया जाता है।

Q.No: 67	<p>Read the following statements:</p> <p>Statement 1: Diastrophism includes all processes that move, elevate, or build up portions of the Earth's crust.</p> <p>Statement 2: Exogenic processes derive their energy from the atmosphere, influenced by solar energy and tectonic gradients.</p> <p>Which of the above statements is/are correct?</p> <p>निम्नलिखित कथनों को पढ़ें:</p> <p>कथन 1: डायस्ट्रोफिज्म में वे सभी प्रक्रियाएं शामिल हैं जो पृथ्वी की पपड़ी के कुछ हिस्सों को हिलाती हैं, ऊपर उठाती हैं या बनाती हैं।</p> <p>कथन 2: एक्सोजेनिक प्रक्रियाएं अपनी ऊर्जा वायुमंडल से प्राप्त करती हैं, जो सौर ऊर्जा और टेक्टोनिक ग्रेडिएंट से प्रभावित होती हैं।</p> <p>उपर्युक्त कथनों में से कौन सा/से सही है/हैं?</p>
	Only Statement 1 is correct
	केवल कथन 1 सही है
	Both statements 1 and 2 are correct
	कथन 1 और 2 दोनों सही हैं
	Both statements 1 and 2 are incorrect
	कथन 1 और 2 दोनों गलत हैं
	Only Statement 2 is correct
	केवल कथन 2 सही है

Q.No: 68	<p>Consider the following statements regarding the structure of Carnatic music compositions and choose correct option:</p> <p>Statement 1: Varnam is typically performed at the end of a Carnatic concert to summarize key ragas.</p> <p>Statement 2: Alapana involves improvisational elaboration of a raga without rhythm (tala).</p> <p>कर्नाटक संगीत रचनाओं की संरचना के संबंध में निम्नलिखित कथनों पर विचार कीजिए और सही विकल्प चुनिए:</p> <p>कथन 1: वर्णम आमतौर पर कर्नाटक संगीत समारोह के अंत में प्रमुख रागों का सारांश प्रस्तुत करने के लिए प्रस्तुत किया जाता है।</p> <p>कथन 2: अलापना में बिना लय (ताल) के राग का तात्कालिक विस्तार शामिल होता है।</p>
	Both 1 and 2 are correct
	1 और 2 दोनों सही हैं
	Neither 1 nor 2 is correct
	न तो 1 और न ही 2 सही है
	Only 2
	केवल 2
	Only 1
	केवल 1
	Not Answered

Q.No: 69	<p>Who was announced on 26 June 2025 as first Indian astronaut for Titans Space mission?</p> <p>26 जून 2025 को टाइटन्स अंतरिक्ष मिशन के लिए प्रथम भारतीय अंतरिक्ष यात्री के रूप में किसे घोषित किया गया?</p>
	Rakesh Sharma
	राकेश शर्मा
	Sunita Williams
	सुनीता विलियम्स
	Jahnvi Dangeti
	जाह्नवी डांगेटी
	Minal Patel
	मीनल पटेल

Q.No: 70	<p>Which of the following ISRO initiatives, launched with the vision of "Catch them young", aims to introduce school students to space science and technology?</p> <p>"कैच देम यंग" के दृष्टिकोण के साथ शुरू की गई निम्नलिखित में से कौन सी इसरो पहल का उद्देश्य स्कूली छात्रों को अंतरिक्ष विज्ञान और प्रौद्योगिकी से परिचित कराना है?</p>
	Vidyarthi Vigyan Manthan
	विद्यार्थी विज्ञान मंथन
	YUVIKA – Young Scientist Programme
	युविका – युवा वैज्ञानिक कार्यक्रम
	SPARK Internship Programme
	स्पार्क इंटरनशिप कार्यक्रम

Q.No: 71 Which classical dance form uses storytelling through hand gestures (mudras) and facial expressions (abhinaya)?

कौन-सी शास्त्रीय नृत्य शैली मुद्राओं (हस्त-चालन) और भाव-भंगिमा (अभिनय) के माध्यम से कथा-वाचन करती है?

Bihu

बिहू

Koli

कोली

Garba

गरबा

Bharatnatyam

भरतनाट्यम

Q.No: 72 Which of the following is true about the **Voluntary Vehicle Fleet Modernisation Programme**?

1. It promotes scrapping of old vehicles to reduce emissions.
2. The 'Ministry of Road Transport and Highways' is the nodal agency.
3. The scheme incentivizes buyers of fuel-efficient new vehicles only in urban areas.

स्वैच्छिक वाहन बेड़ा **आधुनिकीकरण कार्यक्रम** के बारे में निम्नलिखित में से कौन सा कथन सत्य है?

1. यह उत्सर्जन कम करने के लिए पुराने वाहनों को स्कैप करने को बढ़ावा देता है।
2. 'सड़क परिवहन और राजमार्ग मंत्रालय' नोडल एजेंसी है।
3. यह योजना केवल शहरी क्षेत्रों में ईंधन-कुशल नए वाहनों के खरीदारों को प्रोत्साहित करती है।

Only 1 and 3 are correct

केवल 1 और 3 सही हैं

All 1, 2 and 3 are correct

सभी 1, 2 और 3 सही हैं

Only 1 and 2 are correct

केवल 1 और 2 सही हैं

Only 2 and 3 are correct

केवल 2 और 3 सही हैं

Q.No: 73 According to **John Maynard Keynes**, what is the most effective tool for reviving an economy during a depression?

जॉन मेनार्ड कीन्स के अनुसार, मंदी के दौरान अर्थव्यवस्था को पुनर्जीवित करने के लिए सबसे प्रभावी उपकरण क्या है?

Increasing public savings

सार्वजनिक बचत में वृद्धि

Reducing private investment

निजी निवेश में कमी

Expanding government expenditure

सरकारी व्यय का विस्तार

Raising income tax on corporations

निगमों पर आयकर बढ़ाना

Q.No: 74 Which of the following is a key focus area of the PM Gati Shakti National Master Plan?

पीएम गति शक्ति राष्ट्रीय मास्टर योजना का प्रमुख ध्यान केंद्रित क्षेत्र कौन सा है?

Multi-modal connectivity

बहु-मोडल कनेक्टिविटी

Rural electrification

ग्रामीण विद्युतीकरण

Agricultural subsidies

कृषि सब्सिडी

Q.No: 75 What major reform does Bharatiya Sakshya Adhiniyam bring?

भारतीय साक्ष्य अधिनियम कौन सा बड़ा सुधार लाता है?

Digitization of evidence

साक्ष्य का डिजिटलीकरण

Introduction of new fundamental rights

नये मौलिक अधिकारों का परिचय

Abolishment of the Supreme Court

सुप्रीम कोर्ट का उन्मूलन

Removal of all existing laws

सभी मौजूदा कानूनों को हटाया जाना

Q.No: 76 Kishor Makwana's appointment as Chairman of NCSC is significant in which evaluative context?

एनसीएससी के अध्यक्ष के रूप में किशोर मकवाना की नियुक्ति किस मूल्यांकनात्मक संदर्भ में महत्वपूर्ण है?

Agricultural economic reforms

कृषि आर्थिक सुधार

Political consolidation in Southern India

दक्षिण भारत में राजनीतिक एकीकरण

Caste census leadership

जाति जनगणना नेतृत्व

Social justice administration and SC policy implementation

सामाजिक न्याय प्रशासन और एससी नीति कार्यान्वयन

Q.No: 77 Where was the 86th Senior National Table Tennis Championships 2025 held?

86वीं सीनियर राष्ट्रीय टेबल टेनिस चैंपियनशिप 2025 कहाँ आयोजित की गई?

Panaji, Goa

पणजी, गोवा

Surat, Gujarat

सूरत, गुजरात

Mumbai, Maharashtra

मुंबई, महाराष्ट्र

Bhubaneswar, Odisha

भुवनेश्वर, ओडिशा

Q.No: 78 The IMEC is envisaged as a multi-modal corridor. Which of the following modes of transport are its primary components?

आईएमईसी को एक मल्टी-मॉडल कॉरिडोर के रूप में परिकल्पित किया गया है। निम्नलिखित में से कौन से परिवहन के साधन इसके प्राथमिक घटक हैं?

Air, Rail, and Sea

वायु, रेल और समुद्र

Road and Pipeline only

केवल सड़क एवं पाइपलाइन

Maritime and Rail only

केवल समुद्री एवं रेल मार्ग

Air and Road only

केवल हवाई और सड़क

Q.No: 79 Which of the following pairs is correctly matched?

निम्नलिखित में से कौन सा युग्म सही सुमेलित है?

Microeconomics – Inflation rate

सूक्ष्मअर्थशास्त्र – मुद्रास्फीति दर

Macroeconomics – Price of tea

मैक्रोइकॉनॉमिक्स - चाय की कीमत

Macroeconomics – National Income

समष्टि अर्थशास्त्र – राष्ट्रीय आय

Microeconomics – GDP

सूक्ष्मअर्थशास्त्र – जीडीपी

Q.No: 80 What was the main purpose behind the enactment of the FRBM (Fiscal Responsibility and Budget Management) Act?

FRBM अधिनियम (राजकोषीय उत्तरदायित्व एवं बजट प्रबंधन अधिनियम) को लागू करने का प्रमुख उद्देश्य क्या था?

To Regulate private sector investments

निजी निवेश को विनियमित करना

To increase fiscal deficit

राजकोषीय घाटे में वृद्धि करना

To reduce government borrowing

सरकारी उधारी को कम करना

To promote foreign trade

विदेशी व्यापार को प्रोत्साहन

Q.No: 81 Arrange the following Fundamental Rights in the order they are listed in the Indian Constitution:

1. Right to Constitutional Remedies
2. Right to Freedom
3. Right against Exploitation
4. Right to Equality

निम्नलिखित मौलिक अधिकारों को भारतीय संविधान में सूचीबद्ध क्रम में व्यवस्थित करें:

1. संवैधानिक उपचारों का अधिकार
2. स्वतंत्रता का अधिकार
3. शोषण के विरुद्ध अधिकार
4. समानता का अधिकार

1-2-3-4

1-2-3-4

3-2-1-4

3-2-1-4

4-1-3-2

4-1-3-2

4-2-3-1

4-2-3-1

Q.No: 82 Which indicator in EODB (Ease of doing business) measures the time and cost to resolve commercial disputes?

ईओडीबी (व्यापार करने में आसानी) में कौन सा संकेतक वाणिज्यिक विवादों को हल करने में लगने वाले समय और लागत को मापता है?

Dealing with construction permits

निर्माण अनुमति के साथ लेनदेन

Enforcing contracts

अनुबंधों को लागू करना

Trading across borders

सीमा पार व्यापार

Getting electricity

बिजली प्राप्त करना

Q.No: 83 According to Bohr's model, what is the significance of an electron transition from a higher energy orbit to a lower energy orbit?

बोहर के मॉडल के अनुसार, उच्च ऊर्जा कक्षा से निम्न ऊर्जा कक्षा में इलेक्ट्रॉन संक्रमण का क्या महत्व है?

The electron's angular momentum becomes quantized.

इलेक्ट्रॉन का कोणीय संवेग क्वांटित हो जाता है।

The electron gains energy.

इलेक्ट्रॉन ऊर्जा प्राप्त करता है.

A photon of energy equal to the energy difference between the orbits is absorbed.

कक्षाओं के बीच ऊर्जा अंतर के बराबर ऊर्जा का एक फोटॉन अवशोषित होता है।

A photon of energy equal to the energy difference between the orbits is emitted.

कक्षाओं के बीच ऊर्जा अंतर के बराबर ऊर्जा का एक फोटॉन उत्सर्जित होता है।

Not Answered

Q.No: 84 India's support for which of the following missions aligns most closely with IMEC's purpose?

निम्नलिखित में से किस मिशन के लिए भारत का समर्थन IMEC के उद्देश्य के साथ सबसे अधिक निकटता से जुड़ा हुआ है?

African Union's Blue Charter mission

अफ्रीकी संघ का ब्लू चार्टर मिशन

Non-Aligned Movement's Neutrality Declaration

गुटनिरपेक्ष आंदोलन की तटस्थता घोषणा

International Solar Alliance energy initiative

अंतर्राष्ट्रीय सौर गठबंधन ऊर्जा पहल

One Sun One World One Grid initiative

एक सूर्य एक विश्व एक ग्रिड पहल

Q.No: 85 What is the main objective of ISRO's SCATSAT-1 satellite?

इसरो के स्कैटसैट-1 उपग्रह का मुख्य उद्देश्य क्या है?

Monitoring earthquake zones

भूकंप क्षेत्रों की निगरानी

Measuring atmospheric ozone depletion

वायुमंडलीय ओजोन क्षरण को मापना

weather forecasting and cyclone prediction

मौसम पूर्वानुमान और चक्रवात पूर्वानुमान

Mapping forest cover across India

भारत भर में वन क्षेत्र का मानचित्रण

Not Answered

Q.No: 86 Which of the following pairs is correctly matched regarding scheme and its implementing ministry?

योजना और इसके कार्यान्वयन मंत्रालय के संबंध में निम्नलिखित में से कौन सा युग्म सही सुमेलित है?

PM-JANMAN - Ministry of Rural Development

पीएम-जनमन - ग्रामीण विकास मंत्रालय

Samarth Scheme - Ministry of Textiles

समर्थ योजना - वस्त्र मंत्रालय

Mission Shakti - Ministry of Home Affairs

मिशन शक्ति - गृह मंत्रालय

PM MITRA - Ministry of Agriculture

पीएम मित्र - कृषि मंत्रालय

Not Answered

Q.No: 87 Which of the following statements is true in relation to the enforcement of President's Rule?

निम्नलिखित में से कौन सा बयान राष्ट्रपति शासन के प्रवर्तन के संबंध में सही है?

The Governor's recommendation can lead to dismissal of a State government, even if it enjoys a majority.

राज्य सरकार की अधिकतम संख्या होने के बावजूद, गवर्नर की सिफारिश राज्य सरकार की बर्खास्तगी का कारण बन सकती है।

It can be extended indefinitely with the consent of the Prime Minister

इसे प्रधानमंत्री की सहमति से अनिश्चितकाल तक बढ़ाया जा सकता है।

The President cannot impose President's Rule unless the Supreme Court permits.

राष्ट्रपति राष्ट्रपति शासन लागू नहीं कर सकते जब तक कि सुप्रीम कोर्ट अनुमति नहीं देता।

President's Rule can be declared without Parliament's approval

राष्ट्रपति शासन बिना संसद की मंजूरी के घोषित किया जा सकता है

Q.No: 88 The Industrial Policy Resolution 1956 played a significant role in shaping India's industrial development strategy. What was a key feature of this resolution?

औद्योगिक नीति संकल्प 1956 ने भारत की औद्योगिक विकास रणनीति को आकार देने में महत्वपूर्ण भूमिका निभाई। इस संकल्प की मुख्य विशेषता क्या थी?

It strongly advocated for the dominance of the private sector in all industrial activities.

इसने सभी औद्योगिक गतिविधियों में निजी क्षेत्र के प्रभुत्व की पुरजोर वकालत की।

It promoted a completely open and competitive industrial environment with minimal government intervention.

इसने न्यूनतम सरकारी हस्तक्षेप के साथ पूर्णतः खुले और प्रतिस्पर्धी औद्योगिक वातावरण को बढ़ावा दिया।

It categorized industries into three schedules, with the public sector leading in strategic and heavy industries.

इसने उद्योगों को तीन अनुसूचियों में वर्गीकृत किया, जिसमें सार्वजनिक क्षेत्र रणनीतिक और भारी उद्योगों में अग्रणी था।

It emphasized the development of small-scale and cottage industries while discouraging large-scale enterprises.

इसमें बड़े पैमाने के उद्यमों को हतोत्साहित करते हुए लघु एवं कुटीर उद्योगों के विकास पर जोर दिया गया।

Q.No: 89 What advanced technology is being tested in ISRO's new "Next Generation Launch Vehicle" (NGLV) project to replace PSLV and GSLV?

पीएसएलवी और जीएसएलवी को प्रतिस्थापित करने के लिए इसरो की नई "नेक्स्ट जेनरेशन लॉन्च व्हीकल" (एनजीएलवी) परियोजना में किस उन्नत तकनीक का परीक्षण किया जा रहा है?

Reusable booster stage with semi-cryogenic engine

अर्ध-क्रायोजेनिक इंजन के साथ पुनः प्रयोज्य बूस्टर चरण

Quantum entanglement-based control

क्वांटम उलझाव-आधारित नियंत्रण

Ramjet propulsion

रैमजेट प्रणोदन

Multiple orbital drop pods

एकाधिक कक्षीय ड्रॉप पॉड्स

Q.No: 90 What is the standard width of a hockey field?

हॉकी मैदान की मानक चौड़ाई कितनी है?

50 meters

50 मीटर

54.5 meters

54.5 मीटर

55 meters

55 मीटर

57 meters

57 मीटर

Not Answered

Q.No: 91 Which Chola ruler is credited with the extensive overseas expedition to Southeast Asia, particularly against the Srivijaya Empire?

दक्षिण-पूर्व एशिया में विशेष रूप से श्रीविजय साम्राज्य के विरुद्ध समुद्री अभियानों के लिए किस चोल शासक को जाना जाता है?

Rajendra

राजेन्द्र प्रथम

Kulothunga I

कुलोत्तुंग प्रथम

Vijayalaya Chola

विजयालय चोल

Q.No: 92	Which specific environmental condition found in waterlogged soils of rice paddies and wetlands directly facilitates the significant microbial production of methane a potent greenhouse gas? धान के खेतों और आर्द्रभूमियों में पाए जाने वाले जलभरित मृदा की कौन-सी विशिष्ट पर्यावरणीय स्थिति सीधे तौर पर मीथेन , जो एक प्रबल ग्रीनहाउस गैस है, के महत्वपूर्ण सूक्ष्मजीवी उत्पादन को सक्षम बनाती है?
Frequent soil tilling	
बार-बार की जाने वाली मिट्टी की जुताई	
High levels of dissolved oxygen	
घुले हुए ऑक्सीजन का उच्च स्तर	
Low soil temperatures	
निम्न मृदा तापमान	
Anaerobic (oxygen-depleted) conditions	
ऐनैरोबिक (ऑक्सीजन-रहित) स्थिति	

Q.No: 93	Metanil yellow, a non-permitted dye, is often used to adulterate turmeric. Which chemical test can confirm its presence? मेटानिल येलो, जो कि एक अप्रामाणिक रंग (गैर-स्वीकृत डाई) है, का अक्सर हल्दी में मिलावट के रूप में उपयोग किया जाता है। इसकी उपस्थिति की पुष्टि किस रासायनिक परीक्षण से की जा सकती है?
Adding vinegar and looking for bubbles	
सिरका मिलाकर बुलबुले बनते देखना	
Alcohol and hydrochloric acid test yielding pink color	
अल्कोहल और हाइड्रोक्लोरिक एसिड से परीक्षण करने पर गुलाबी रंग प्राप्त होता है	
Boiling in water and observing sediment	
पानी में उबालने पर तलछट (sediment) का निरीक्षण करना	
Mixing with saltwater and checking for layers	
नमक के पानी में मिलाकर परतों की जांच करना	

Q.No: 94	Given below are assertion and reason, read the statements and choose the correct option. Assertion(A): Sir Charles Napier justified the annexation of Sindh on moral and legal grounds. Reason(R): He described it as a "useful humane piece of rascality." नीचे कथन और कारण दिए गए हैं, कथनों को पढ़ें और सही विकल्प चुनें। कथन (A): सर चार्ल्स नेपियर ने नैतिक और कानूनी आधार पर सिंध के विलय को उचित ठहराया। कारण (R): उन्होंने इसे "दुष्टता का एक उपयोगी मानवीय टुकड़ा" बताया।
Both Assertion (A) and Reason (R) are true, and R is the correct explanation of A.	
अभिकथन (A) और कारण (R) दोनों सत्य हैं, तथा R, A का सही स्पष्टीकरण है।	
A is true, but R is false.	
A सत्य है, लेकिन R असत्य है।	
A is false, but R is true.	
A असत्य है, लेकिन R सत्य है।	
Both Assertion (A) and Reason (R) are true, and R is not the correct explanation of A.	
अभिकथन (A) और कारण (R) दोनों सत्य हैं, तथा R, A का सही स्पष्टीकरण नहीं है।	
Not Answered	

Q.No: 95	Which river is the main source of water for the Hirakud Dam? हीराकुंड बाँध के लिए मुख्य जल स्रोत कौन-सी नदी है?
Tadoba-Andhari National Park	
तडोबा-अंधारी राष्ट्रीय उद्यान	
Silent Valley National Park	
साइलेंट वैली राष्ट्रीय उद्यान	
Nagarhole National Park	

Q.No: 96	In Kho-Kho, how many players are in a team, and how many are on the field during a game? खो-खो में एक टीम में कितने खिलाड़ी होते हैं और खेल के दौरान मैदान पर कितने खिलाड़ी होते हैं?
	9 players in a team, 9 on the field. एक टीम में 9 खिलाड़ी, मैदान पर 9 खिलाड़ी।
	12 players in a team, 9 on the field. एक टीम में 12 खिलाड़ी, मैदान पर 9 खिलाड़ी।
	12 players in a team, 12 on the field. एक टीम में 12 खिलाड़ी, मैदान पर 12 खिलाड़ी।
	9 players in a team, 12 on the field. एक टीम में 9 खिलाड़ी, मैदान पर 12 खिलाड़ी।

Q.No: 97	The Indian Constitution is often described as 'quasi-federal' or 'federal in form, unitary in spirit' primarily due to which characteristic? भारतीय संविधान को प्रायः 'अर्ध-संघीय' या 'रूप में संघीय, भावना में एकात्मक' के रूप में वर्णित किया जाता है, मुख्यतः किस विशेषता के कारण?
	The equal representation of states in the Rajya Sabha. राज्यसभा में राज्यों का समान प्रतिनिधित्व। The presence of a written constitution. लिखित संविधान की उपस्थिति। Strong centralizing tendencies and powers of the Union Government. संघ सरकार की मजबूत केंद्रीकरण प्रवृत्तियाँ और शक्तियाँ। The existence of independent judiciary. स्वतंत्र न्यायपालिका का अस्तित्व।

Q.No: 98	If a country improves in the GGGR due to a policy mandating equal female representation on company boards, which GGGR dimension would be most directly impacted? यदि किसी देश की कंपनी बोर्ड में महिलाओं के समान प्रतिनिधित्व को अनिवार्य करने वाली नीति के कारण GGGR में सुधार होता है, तो GGGR का कौन सा आयाम सबसे अधिक सीधे तौर पर प्रभावित होगा?
	Educational Attainment शिक्षा प्राप्ति Health and Survival स्वास्थ्य और जीवन रक्षा Political Empowerment राजनीतिक सशक्तिकरण Economic Participation and Opportunity आर्थिक भागीदारी और अवसर

Q.No: 99	Name the Mughal emperor known for promoting Persian art and literature? वह मुगल शासक कौन था जिसने फारसी कला और साहित्य को विशेष संरक्षण प्रदान किया?
	Humayun हुमायूँ Shah Jahan शाहजहाँ Akbar अकबर Jahangir जहाँगीर

Q.No: 100	The concept of "Directive Principles of State Policy (DPSP)" in the Indian Constitution has been borrowed from the Constitution of which country? भारतीय संविधान में "राज्य के नीति निर्देशक सिद्धांतों (डीपीएसपी)" की अवधारणा किस देश के संविधान से उधार ली गई है?
	Ireland आयरलैंड
	United States of America संयुक्त राज्य अमेरिका
	United Kingdom यूनाइटेड किंगडम
	Canada कनाडा

PART - C (English Language and Comprehension)

Q.No: 101	Select the most appropriate option to improve the bold part of the sentence. The price of petrol has increased yesterday .
	rose yesterday
	increased yesterday
	has been increased yesterday
	risen yesterday

Q.No: 102	Read the following passage carefully and answer the questions that follow by selecting the most appropriate option from the given alternatives. In a small village, a government school has become an example of clean energy use. The school uses solar panels to run fans, lights, and even computers. This helps the school save money on electricity bills. The saved money is used to buy books and improve classrooms. The teachers also explain to students how solar energy works and why it is good for the planet. Students learn that solar power does not cause pollution like coal or petrol. The school has also inspired nearby houses to install solar panels. This change has made the village cleaner and more aware of the environment. Even on cloudy days, the solar battery stores enough power to keep the school running. With small steps like this, more schools and homes can help protect nature and build a better future. What energy source does the school use?
	Petrol
	Wind
	Solar
	Gas

Q.No: 103	Read the following passage carefully and answer the questions that follow by selecting the most appropriate option from the given alternatives. In a small village, a government school has become an example of clean energy use. The school uses solar panels to run fans, lights, and even computers. This helps the school save money on electricity bills. The saved money is used to buy books and improve classrooms. The teachers also explain to students how solar energy works and why it is good for the planet. Students learn that solar power does not cause pollution like coal or petrol. The school has also inspired nearby houses to install solar panels. This change has made the village cleaner and more aware of the environment. Even on cloudy days, the solar battery stores enough power to keep the school running. With small steps like this, more schools and homes can help protect nature and build a better future. What does the school do with saved electricity money?
	Build a playground
	Buy food
	Buy books and improve classrooms
	Hire more teachers

Q.No: 104	<p>Read the following passage carefully and answer the questions that follow by selecting the most appropriate option from the given alternatives.</p> <p>In a small village, a government school has become an example of clean energy use. The school uses solar panels to run fans, lights, and even computers. This helps the school save money on electricity bills. The saved money is used to buy books and improve classrooms. The teachers also explain to students how solar energy works and why it is good for the planet. Students learn that solar power does not cause pollution like coal or petrol. The school has also inspired nearby houses to install solar panels. This change has made the village cleaner and more aware of the environment. Even on cloudy days, the solar battery stores enough power to keep the school running. With small steps like this, more schools and homes can help protect nature and build a better future.</p> <p>Why is solar energy better than coal?</p>
It is cheaper to burn	
It does not cause pollution	
It is easier to store	
It is available in bottles	

Q.No: 105	<p>Read the following passage carefully and answer the questions that follow by selecting the most appropriate option from the given alternatives.</p> <p>In a small village, a government school has become an example of clean energy use. The school uses solar panels to run fans, lights, and even computers. This helps the school save money on electricity bills. The saved money is used to buy books and improve classrooms. The teachers also explain to students how solar energy works and why it is good for the planet. Students learn that solar power does not cause pollution like coal or petrol. The school has also inspired nearby houses to install solar panels. This change has made the village cleaner and more aware of the environment. Even on cloudy days, the solar battery stores enough power to keep the school running. With small steps like this, more schools and homes can help protect nature and build a better future.</p> <p>What did the school inspire villagers to do?</p>
Use less water	
Buy new uniforms	
Install solar panels	
Visit the school more	

Q.No: 106	<p>Read the following passage carefully and answer the questions that follow by selecting the most appropriate option from the given alternatives.</p> <p>In a small village, a government school has become an example of clean energy use. The school uses solar panels to run fans, lights, and even computers. This helps the school save money on electricity bills. The saved money is used to buy books and improve classrooms. The teachers also explain to students how solar energy works and why it is good for the planet. Students learn that solar power does not cause pollution like coal or petrol. The school has also inspired nearby houses to install solar panels. This change has made the village cleaner and more aware of the environment. Even on cloudy days, the solar battery stores enough power to keep the school running. With small steps like this, more schools and homes can help protect nature and build a better future.</p> <p>What helps the school on cloudy days?</p>
Electricity from the city	
Fans from other schools	
Solar batteries	
Teachers' phones	

Q.No: 107	<p>Read the following passage carefully and answer the questions that follow by selecting the most appropriate option from the given alternatives.</p> <p>The rise of genetic engineering has redefined what is scientifically possible, but not necessarily what is ethically acceptable. While gene editing offers hope in treating inherited diseases and improving crop resilience, it also raises profound moral questions. Should we edit genes to enhance intelligence or physical ability? Where do we draw the line between therapy and enhancement? These questions remain unsettled. Some argue that altering the human genome for non-medical reasons may lead to a new form of inequality—where the genetically modified have social advantages over others. Others fear unintended consequences: once a gene is changed, its effects may ripple through generations. Science often moves faster than legislation, leaving ethical frameworks lagging behind. True progress lies not in what we can do, but in what we choose to do responsibly. As with all powerful tools, genetic engineering demands caution, reflection, and a shared sense of human values.</p> <p>What is the central concern of the passage?</p>
	Costs of gene therapy
	Government control of science
	Ethical use of genetic engineering
	Advances in medical devices

Q.No: 108	<p>Read the following passage carefully and answer the questions that follow by selecting the most appropriate option from the given alternatives.</p> <p>The rise of genetic engineering has redefined what is scientifically possible, but not necessarily what is ethically acceptable. While gene editing offers hope in treating inherited diseases and improving crop resilience, it also raises profound moral questions. Should we edit genes to enhance intelligence or physical ability? Where do we draw the line between therapy and enhancement? These questions remain unsettled. Some argue that altering the human genome for non-medical reasons may lead to a new form of inequality—where the genetically modified have social advantages over others. Others fear unintended consequences: once a gene is changed, its effects may ripple through generations. Science often moves faster than legislation, leaving ethical frameworks lagging behind. True progress lies not in what we can do, but in what we choose to do responsibly. As with all powerful tools, genetic engineering demands caution, reflection, and a shared sense of human values.</p> <p>What does the author suggest about using genes to enhance traits?</p>
	It improves global health
	It is encouraged by law
	It risks creating inequality
	It always benefits society

Q.No: 109	<p>Read the following passage carefully and answer the questions that follow by selecting the most appropriate option from the given alternatives.</p> <p>The rise of genetic engineering has redefined what is scientifically possible, but not necessarily what is ethically acceptable. While gene editing offers hope in treating inherited diseases and improving crop resilience, it also raises profound moral questions. Should we edit genes to enhance intelligence or physical ability? Where do we draw the line between therapy and enhancement? These questions remain unsettled. Some argue that altering the human genome for non-medical reasons may lead to a new form of inequality—where the genetically modified have social advantages over others. Others fear unintended consequences: once a gene is changed, its effects may ripple through generations. Science often moves faster than legislation, leaving ethical frameworks lagging behind. True progress lies not in what we can do, but in what we choose to do responsibly. As with all powerful tools, genetic engineering demands caution, reflection, and a shared sense of human values.</p> <p>Why are ethical frameworks struggling to keep up?</p>
	Scientists disagree
	Public lacks interest
	Laws are faster than research
	Science progresses rapidly

Q.No: 110	<p>Read the following passage carefully and answer the questions that follow by selecting the most appropriate option from the given alternatives.</p> <p>The rise of genetic engineering has redefined what is scientifically possible, but not necessarily what is ethically acceptable. While gene editing offers hope in treating inherited diseases and improving crop resilience, it also raises profound moral questions. Should we edit genes to enhance intelligence or physical ability? Where do we draw the line between therapy and enhancement? These questions remain unsettled. Some argue that altering the human genome for non-medical reasons may lead to a new form of inequality—where the genetically modified have social advantages over others. Others fear unintended consequences: once a gene is changed, its effects may ripple through generations. Science often moves faster than legislation, leaving ethical frameworks lagging behind. True progress lies not in what we can do, but in what we choose to do responsibly. As with all powerful tools, genetic engineering demands caution, reflection, and a shared sense of human values.</p> <p>What does the author imply about gene editing's long-term impact?</p>
It is fully reversible	
It can affect future generations	
It has no proven results	
It only benefits the rich	

Q.No: 111	<p>Read the following passage carefully and answer the questions that follow by selecting the most appropriate option from the given alternatives.</p> <p>The rise of genetic engineering has redefined what is scientifically possible, but not necessarily what is ethically acceptable. While gene editing offers hope in treating inherited diseases and improving crop resilience, it also raises profound moral questions. Should we edit genes to enhance intelligence or physical ability? Where do we draw the line between therapy and enhancement? These questions remain unsettled. Some argue that altering the human genome for non-medical reasons may lead to a new form of inequality—where the genetically modified have social advantages over others. Others fear unintended consequences: once a gene is changed, its effects may ripple through generations. Science often moves faster than legislation, leaving ethical frameworks lagging behind. True progress lies not in what we can do, but in what we choose to do responsibly. As with all powerful tools, genetic engineering demands caution, reflection, and a shared sense of human values.</p> <p>Which phrase best captures the author's message?</p>
"Edit now, regret later"	
"Act fast and innovate"	
"Caution must guide progress"	
"All science is safe"	

Q.No: 112	<p>In the following passage, some words have been omitted. Read the passage carefully and choose the most appropriate option from the given alternatives to fill in each blank. Mark your answer for each question.</p> <p>Ravi and Arjun had been rivals on the football field since their first year in school. Both were talented players, and their competition often brought out the best—and sometimes the worst—in them. When the school team was selected for the district championship, both were chosen to play. At first, their rivalry made teamwork difficult. Passes were missed, tempers (1)_____ and the coach had to step in. He reminded them that personal pride should never come before the team. Slowly, Ravi and Arjun began to (2)_____ one another's strengths instead of focusing on their differences. As trust grew, their coordination improved, and the team's performance soared. In the semi-final match, it was a pass from Ravi that helped Arjun score the winning goal. The crowd cheered not just for the win, but for the sportsmanship. What began as a clash ended in a strong (3)_____ that taught them the value of unity, mutual (4)_____ and shared (5)_____.</p> <p>(1)</p>
broke	
cooled	
flared	
paused	

Q.No: 113	<p>In the following passage, some words have been omitted. Read the passage carefully and choose the most appropriate option from the given alternatives to fill in each blank. Mark your answer for each question.</p> <p>Ravi and Arjun had been rivals on the football field since their first year in school. Both were talented players, and their competition often brought out the best—and sometimes the worst—in them. When the school team was selected for the district championship, both were chosen to play. At first, their rivalry made teamwork difficult. Passes were missed, tempers (1)_____ and the coach had to step in. He reminded them that personal pride should never come before the team. Slowly, Ravi and Arjun began to (2)_____ one another's strengths instead of focusing on their differences. As trust grew, their coordination improved, and the team's performance soared. In the semi-final match, it was a pass from Ravi that helped Arjun score the winning goal. The crowd cheered not just for the win, but for the sportsmanship. What began as a clash ended in a strong (3)_____ that taught them the value of unity, mutual (4)_____ and shared (5)_____</p> <p>(2)</p>
ignore	
appreciate	
compete	
prove	

Q.No: 114	<p>In the following passage, some words have been omitted. Read the passage carefully and choose the most appropriate option from the given alternatives to fill in each blank. Mark your answer for each question.</p> <p>Ravi and Arjun had been rivals on the football field since their first year in school. Both were talented players, and their competition often brought out the best—and sometimes the worst—in them. When the school team was selected for the district championship, both were chosen to play. At first, their rivalry made teamwork difficult. Passes were missed, tempers (1)_____ and the coach had to step in. He reminded them that personal pride should never come before the team. Slowly, Ravi and Arjun began to (2)_____ one another's strengths instead of focusing on their differences. As trust grew, their coordination improved, and the team's performance soared. In the semi-final match, it was a pass from Ravi that helped Arjun score the winning goal. The crowd cheered not just for the win, but for the sportsmanship. What began as a clash ended in a strong (3)_____ that taught them the value of unity, mutual (4)_____ and shared (5)_____</p> <p>(3)</p>
partnership	
challenge	
lesson	
match	

Q.No: 115	<p>In the following passage, some words have been omitted. Read the passage carefully and choose the most appropriate option from the given alternatives to fill in each blank. Mark your answer for each question.</p> <p>Ravi and Arjun had been rivals on the football field since their first year in school. Both were talented players, and their competition often brought out the best—and sometimes the worst—in them. When the school team was selected for the district championship, both were chosen to play. At first, their rivalry made teamwork difficult. Passes were missed, tempers (1)_____ and the coach had to step in. He reminded them that personal pride should never come before the team. Slowly, Ravi and Arjun began to (2)_____ one another's strengths instead of focusing on their differences. As trust grew, their coordination improved, and the team's performance soared. In the semi-final match, it was a pass from Ravi that helped Arjun score the winning goal. The crowd cheered not just for the win, but for the sportsmanship. What began as a clash ended in a strong (3)_____ that taught them the value of unity, mutual (4)_____ and shared (5)_____</p> <p>(4)</p>
effort	
celebration	
respect	
rivalry	

Q.No: 116	<p>In the following passage, some words have been omitted. Read the passage carefully and choose the most appropriate option from the given alternatives to fill in each blank. Mark your answer for each question.</p> <p>Ravi and Arjun had been rivals on the football field since their first year in school. Both were talented players, and their competition often brought out the best—and sometimes the worst—in them. When the school team was selected for the district championship, both were chosen to play. At first, their rivalry made teamwork difficult. Passes were missed, tempers (1)_____ and the coach had to step in. He reminded them that personal pride should never come before the team. Slowly, Ravi and Arjun began to (2)_____ one another's strengths instead of focusing on their differences. As trust grew, their coordination improved, and the team's performance soared. In the semi-final match, it was a pass from Ravi that helped Arjun score the winning goal. The crowd cheered not just for the win, but for the sportsmanship. What began as a clash ended in a strong (3)_____ that taught them the value of unity, mutual (4)_____ and shared (5)_____</p> <p>(5)</p>
	pressure
	fear
	pride
	conflict

Q.No: 117	<p>Select the option that expresses the given sentence in Direct to Indirect Speech.</p> <p>They said, "How foolish of him to say that!"</p>
	They exclaimed how foolish of him to say that.
	They exclaimed that it had been very foolish of him to say that.
	They exclaimed that he is very foolish to say that.
	They said it was very foolish of him to say that.

Q.No: 118	<p>Choose the part of the sentence that contains an error:</p> <p>My elder sister is married with a doctor.</p>
	a doctor
	No error
	is married with
	My elder sister

Q.No: 119	<p>Choose the correct one-word substitution for:</p> <p>"A symbol that serves as an emblem of a group of people"</p>
	token
	Totem
	Banner
	Trophy

Q.No: 120	<p>Choose the correct option to complete the sentence.</p> <p>The car remained _____ at the red light.</p>
	stationerie
	stationary
	stationery
	stationry

Q.No: 121	Select the most appropriate option to fill in the blank. He is not eligible ____ this post.
with	
by	
to	
for	

Q.No: 122	In the following question, the first and the last parts of the sentence/passage are numbered 1 and 6. The rest of the sentence/passage is split into four parts — P, Q, R, and S. These four parts are not given in their proper order. Read the sentence/passage and find the most logical order of the parts between 1 and 6. Human memory is a complex neurological process. P: Short-term memory stores data temporarily for immediate use. Q: Information can be transferred to long-term memory with repetition. R: The brain filters and encodes information efficiently. S: Long-term memory holds information for an extended period. 6. Understanding memory helps improve learning strategies.
RQPS	
PSRQ	
RPSQ	
PRSQ	

Q.No: 123	Select the most appropriate option to improve the bold part of the sentence. I wish I am taller .
were taller	
was taller	
would be taller	
could be taller	

Q.No: 124	Find the incorrect part of the sentence: The ship drowned in the sea.
in the sea	
drowned	
No error	
The ship	

Q.No: 125	Select the synonym of Candid .
Frank	
Dubious	
Insincere	
Secretive	

Q.No: 126	Choose the antonym of 'scrupulous':
Principled	

Ethical

Careless

Dishonest

Q.No: 127 Choose the part of the sentence that contains an error:
She insisted to accompany me.

to accompany

me

No error

She insisted

Q.No: 128 Select the most appropriate option to fill in the blank.
He was accused ____ theft.

with

by

of

for

Q.No: 129 Which of the following sentences is grammatically correct?

When we reached the station, the train have already left.

When we reached the station, the train has already left.

When we reached the station, the train had already left.

When we reached the station, the train already left.

Q.No: 130 Identify the part containing a grammatical or structural error:
The jury was divided in their opinions.

No error

The jury

was divided

in their opinions

Q.No: 131 Choose the antonym of 'superficial':

Shallow

Surface

External

Deep

Q.No: 132 Select the most appropriate option to fill in the blank.
I have no objection ____ your proposal.

for

of
with
it

Q.No: 133	Select the option that expresses the given sentence in Direct to Indirect Speech. He said, "It must be raining outside."
He said it should be raining outside.	
He said it must be raining outside.	
He said it might be raining outside.	
He said it had to be raining outside.	

Q.No: 134	Select the most appropriate option to improve the bold part of the sentence. We waited for him since two hours .
until two hours	
from two hours	
by two hours	
for two hours	

Q.No: 135	Find the incorrect part of the sentence: He has come yesterday.
yesterday	
No error	
come	
He has come	

Q.No: 136	Select the correct active form of the given sentence. "The cake had been decorated by the baker."
The baker decorates the cake.	
The baker is decorating the cake.	
The baker had decorated the cake.	
The baker will decorate the cake.	

Q.No: 137	In the following question, the first and the last parts of the sentence/passage are numbered 1 and 6. The rest of the sentence/passage is split into four parts — P, Q, R, and S. These four parts are not given in their proper order. Read the sentence/passage and find the most logical order of the parts between 1 and 6. Social media influences public opinion. P: Posts can go viral within minutes. Q: It helps in sharing views widely. R: However, misinformation also spreads fast. S: This can lead to confusion or panic. 6. So, digital literacy is essential today.
QPRS	
PRQS	
QPSR	
QSRP	

Q.No: 138	Select the correct active form. "Has the file been uploaded by you?"
Did you upload the file?	
Had you uploaded the file?	
Are you uploading the file?	
Have you uploaded the file?	

Q.No: 139	Choose the correct option to complete the sentence. The carpenter replaced the broken _____ in the window.
plain	
peyn	
pain	
pane	

Q.No: 140	Choose the one which can be substituted for the given sentence. A short amusing story
Anecdote	
Chronicle	
Epistle	
Essay	

Q.No: 141	Choose the correct indirect speech form of the following sentence. Rohan said to Manasi, "I have no rose to give you now."
Rohan told Manasi that he has no rose to give her then.	
Rohan told Manasi that he had no rose to give her then.	
Rohan told Manasi that he had had no rose to give her then.	
Rohan told Manasi that he had no rose to give her now.	

Q.No: 142	Arrange the sentence parts: (A) my mother (B) bought (C) a beautiful saree (D) yesterday
ABCD	
CBAD	
ACBD	
BACD	

Q.No: 143	Choose the antonym of 'approve':
Reject	

Sanction
Endorse
Certify

Q.No: 144	Select the option that expresses the given sentence in Direct Speech. She said that she had never encountered such behavior.
She said, "I never encounter such behavior."	
She said, "I have never encountered such behavior."	
She said, "I was never encountering such behavior."	
She said, "I had never encountered such behavior."	

Q.No: 145	Select the correct passive form of the given sentence. "She cleaned the house yesterday."
The house was being cleaned.	
The house has cleaned.	
The house is cleaned by her yesterday.	
The house was cleaned by her yesterday.	

Q.No: 146	Select the most appropriate option to fill in the blank. Ramesh is senior ____ me in service.
to	
from	
of	
with	

Q.No: 147	Rearrange the parts of the sentence in the correct order. Postcolonial literature P. interrogates historical narratives, Q. while reclaiming suppressed voices R. and offers alternative perspectives S. rooted in indigenous experience,
PSRQ	
RSPQ	
QRSP	
SRPQ	

Q.No: 148	Choose the correct sequence to form a meaningful sentence: (A) opened (B) slowly (C) the door (D) he
DABC	
BACE	
BACD	

Q.No: 149 Select the most appropriate option to improve the bold part of the sentence.
The wall is **decorated by posters**.

full of posters

painted in posters

decorated with posters

covered in posters

Q.No: 150 Select the most appropriate homonym.
This **case** calls for immediate action.

Legal matter

Suitcase

Example

Scenario

Q.No: 151 What does the idiom 'Throw in the towel' mean?

Boast

Give up

Work harder

Start afresh

Q.No: 152 The figure of speech used in "I wandered lonely as a cloud..."?

Hyperbole

Simile

Metaphor

Personification

Q.No: 153 What does the idiom 'Jump the gun' mean?

Succeed quickly

Act prematurely

Wait patiently

Fire a gun

Q.No: 154 Select the antonym of 'Arraign'.

Justify

Gluttonous

Hungry

Selfish

Not Answered

Q.No: 155 What does the idiom 'To beat a dead horse' mean?

Be overconfident

Win a competition

Encourage others

Waste time on a hopeless issue

Q.No: 156 Choose the antonym of 'liberation':

Captivity

Independence

Emancipation

Freedom

Q.No: 157 Select the most appropriate option to fill in the blank.
The editor dispensed ____ unnecessary details.

of

by

to

with

Q.No: 158 Choose the correct direct speech form of the following sentence.

He exclaimed that the flower was looking very beautiful, which was placed in the vase.

He said, "How beautiful the flower is looking, which is placed in the vase!"

He said, "What beautiful the flower is looking which was placed in the vase!"

He said, "Which beautiful the flower was looking which is placed in the vase!"

He said, "The flower is looking very beautiful, which is placed in the vase!"

Q.No: 159 Select the correct spelling of a word word related to bees.

Apiary

Apiery

Apairy

Apeary

Q.No: 160 Select the most appropriate option to fill in the blank.
I am not interested ____ politics.

on

at	
in	
of	

Q.No: 161	Choose the one which can be substituted for the given sentence. The act of killing one's brother
Fratricide	
Suicide	
Patricide	
Homicide	

Q.No: 162	Choose the one which can be substituted for the given sentence. An official pardon for offenders
Reprieve	
Absolution	
Amnesty	
Clemency	

Q.No: 163	Choose the antonym of 'ascend':
Rise	
Soar	
Climb	
Descend	

Q.No: 164	In the following question, the first and the last parts of the sentence/passage are numbered 1 and 6. The rest of the sentence/passage is split into four parts — P, Q, R, and S. These four parts are not given in their proper order. Read the sentence/passage and find the most logical order of the parts between 1 and 6. Plants need sunlight to grow. P: Photosynthesis needs light. Q: No food is made without it. R: Leaves turn yellow without it. S: The plant dies PSQRslowly. 6. Sunlight is very important.
SPQR	
PSQR	
PQRS	
SQPR	

Q.No: 165	Choose the one which can be substituted for the given sentence. A man whose wife is dead
Widower	
Bachelor	
Heir	
Divorcee	

Q.No: 166	Select the synonym of Exquisite .
Crude	
Harsh	
Delicate	
Ordinary	

Q.No: 167	Which of these words is spelled wrongly?
Resplendent	
Idiosyncrasy	
Dichotomy	
Vernacular	

Q.No: 168	Select the option that expresses the given sentence in Direct to Indirect Speech. He said to me, "Where are you going?"
He asked me where I had gone.	
He asked me where I am going.	
He asked me where I go.	
He asked me where I was going.	

Q.No: 169	Find the misspelt word.
Idiosyncrasy	
incredible	
Idiosyncrasy	
guidance	

Q.No: 170	Choose the part of the sentence that contains an error: He is living in Chennai since five years.
No error	
He is living	
since five years	
in Chennai	

Q.No: 171	Choose the correct option to complete the sentence. She gave me a nice _____ on my new haircut.
complement	
complimente	
compleement	
compliment	

Q.No: 172	Choose the correct direct speech form of the following sentence. Rina told Suman to leave the city immediately.
	Rina said to Suman, "Leave the city immediately now."
	Rina said to Suman, "Please leave the city immediately."
	Rina said to Suman, "Leave the city immediately."
	Rina said to Suman, "You leave the city immediately."

Q.No: 173	Select the correct active form. "By whom is this rule obeyed?"
	Who is obeying this rule?
	Who does obey this rule?
	Who obeys this rule?
	Who has obeyed this rule?

Q.No: 174	Select the most appropriate homonym. He gave her a cold shoulder at the party.
	Apology
	Embrace
	Complaint
	Ignore

Q.No: 175	Choose the correctly spelt word:
	Supercede
	Supirsede
	Supersede
	Suppercede

Q.No: 176	Pick the synonym of 'Frivolous'.
	Powerful
	Essential
	Significant
	Trivial

Q.No: 177	Convert the sentence provided below from its passive voice structure to an active voice structure: The documents are signed by the director before submission.
	The documents are being signed by the director before submission.
	The director signs the documents before submission.

The director has signed the documents before submission.

The director signed the documents before submission.

Q.No: 178 Select the most appropriate option to fill in the blank.
He was deprived ____ his rights.

with

from

of

by

Q.No: 179 Select the correct passive form of the given sentence.
"They ought to have completed the task."

The task ought have completed.

The task ought be completed.

The task ought to have been completed.

The task ought to completed.

Q.No: 180 In the following question, the first and the last parts of the sentence/passage are numbered 1 and 6. The rest of the sentence/passage is split into four parts — P, Q, R, and S. These four parts are not given in their proper order. Read the sentence/passage and find the most logical order of the parts between 1 and 6.

The evolution of language is deeply linked to human history. P: Early humans used symbols to convey meaning. Q: Writing systems emerged thousands of years later. R: Spoken language likely developed alongside tool use. S: Over time, languages diversified across regions. 6. Today, language continues to evolve with technology.

QRSP

RPQS

RPSQ

PRSQ

Q.No: 181 Choose the correct indirect speech form of the following sentence.

He said, "Will you finish your task on time?"

He asked me if I should finish my task on time?

He asked me if I should have finished my task on time.

He asked me if I should finish my task on time.

He asked me if I should finish his task on time.

Q.No: 182 Select the most appropriate option to improve the bold part of the sentence.
Had I known about the delay, I **will wait**.

would have waited

will have waited

would waited

waited

Q.No: 183 In the following question, the first and the last parts of the sentence/passage are numbered 1 and 6. The rest of the sentence/passage is split into four parts — P, Q, R, and S. These four parts are not given in their proper order. Read the sentence/passage and find the most logical order of the parts between 1 and 6.

A compass is an important tool in navigation. P: It always points towards the magnetic north. Q: Even in cloudy weather, it shows direction. R: It does not depend on GPS or electricity. S: Hikers and sailors rely on it during travel. 6. Thus, it remains a reliable tool even today.

PQRS

SRPQ

PRSQ

RQPS

Q.No: 184 Select the most appropriate option to improve the bold part of the sentence.
She said me the truth.

told me

said to me

says me

spoke to me

Q.No: 185 Select the synonym of **Taciturn**.

Bold

Reserved

Talkative

Noisy

Q.No: 186 Identify the part containing a grammatical or structural error:
Hardly had he left the room when the guests have arrived.

Hardly had he

No error

left the room

when the guests have arrived

Q.No: 187 What does the idiom 'Cry wolf' mean?

Be truthful

Lie unnecessarily

Help others

Raise a false alarm

Q.No: 188 Select the correct active form of the given sentence.
"The house was painted by them last month."

They paint the house last month.

They have painted the house last month.

They were painting the house last month.

They painted the house last month.

Q.No: 189 Transform the following sentence into active voice:

Let the mobile be charged.

Charge the mobile.

One must charge the mobile.

Someone should charge the mobile.

Will you charge the mobile?

Q.No: 190 Select the option that expresses the given sentence in Direct to Indirect Speech.
She said, "Has he left already?"

She asked if he had left already.

She asked had he left already.

She asked whether had he left already.

She said if he had left already.

Q.No: 191 Choose the one which can be substituted for the given sentence.
A partner in crime

Rival

Accomplice

Patriot

Ally

Q.No: 192 Which of the following sentences is grammatically correct?

He went to college in a train.

He went to college with a train.

He went to college by a train.

He went to college on a train.

Q.No: 193 Arrange the sentence parts:
(A) to the office (B) reached (C) Mr. Sharma (D) at 9 am

CABD

CDBA

CBAD

DCAB

Q.No: 194	Select the most appropriate option to improve the bold part of the sentence. He is living here since 2020.
He is staying here since 2020.	
He has been living here since 2020.	
He lives here since 2020.	
He is here since 2020.	

Q.No: 195	Select the most appropriate option to fill in the blank. There is ___ apple on the table.
one	
a	
a	
the	

Q.No: 196	The meaning of the Idiom ' Make a clean breast of ' is to:
Argue	
Accuse	
Confess	
Whisper	

Q.No: 197	Find the incorrect part of the sentence: No less than fifty students were absent.
No error	
were absent	
fifty students	
No less than	

Q.No: 198	Select the correct passive form of the given sentence. "They have discussed the issue already."
The issue was discussed by them.	
The issue has been discussed already by them.	
The issue discusses by them.	
The issue had been discussed.	

Q.No: 199	Select the synonym of Vicinity .
Absence	
Proximity	
Distance	
Departure	

Q.No: 200	Find the incorrect part of the sentence: The old man fell down from the stairs.
fell down	
No error	
from the stairs	
The old man	

KD Job Updates



SSC ONLINE EXAMINATION

CANDIDATE RESPONSE SHEET/GRIEVANCE SYSTEM

[View Your Responses](#)[Click Here Grievance About Question](#)[Click Here View Grievance Questions](#)Admin loggedin.[[Logout](#)]

Exam Name : Steno Grade C and D ▼
Test Date : 08 Aug 2025
Test Time : 01:15 PM
Centre : UPGOR601_APSARA ONLINE CENTER_350501

Correct Option selected Wrong Option selected Correct Option Not Answered

PART - A (General Intelligence & Reasoning)

Q.No: 1	Choose the different number: भिन्न संख्या चुनें:
38	
38	
39	
39	
40	
40	
36	
36	
Q.No: 2	Iron, Copper, Zinc, Plastic – which is the odd one? लोहा, तांबा, जस्ता, प्लास्टिक - इनमें से कौन सा विषम है?
लोहा	
प्लास्टिक	
Copper	
तांबा	
Zinc	
जस्ता	
Iron	
लोहा	
Q.No: 3	In a code, 'CAT' is written as 'FDW', then how is 'DOG' written in the same code? एक कोड में, 'CAT' को 'FDW' लिखा जाता है, तो उसी कोड में 'DOG' को कैसे लिखा जाएगा?
GOJ	
GOJ	
EOH	
EOH	
ERH	
ERH	
GRH	
GRH	

Q.No: 4	<p>All words that are not yet sorted alphabetically are then placed immediately after the newly sorted word, maintaining their relative order. All numbers that are not yet sorted in descending order are then placed immediately before the newly sorted number, maintaining their relative order. This process continues until all words are arranged in alphabetical order at the left end, and all numbers in descending order at the right end. Based on the pattern, answer the questions that follow the given input.</p> <p>Input: Craft 71 60 40 Art Skill Brain 83</p> <p>Question: What is the Step I arrangement?</p> <p>वे सभी शब्द जो अभी तक वर्णानुक्रम में क्रमबद्ध नहीं हुए हैं, उन्हें नए क्रमबद्ध शब्द के ठीक बाद रखा जाता है, जिससे उनका सापेक्ष क्रम बना रहता है। वे सभी संख्याएँ जो अभी तक अवरोही क्रम में क्रमबद्ध नहीं हुई हैं, उन्हें नए क्रमबद्ध संख्या के ठीक पहले रखा जाता है, जिससे उनका सापेक्ष क्रम बना रहता है। यह प्रक्रिया तब तक जारी रहती है जब तक कि सभी शब्द बाएँ छोर पर वर्णानुक्रम में और सभी संख्याएँ दाएँ छोर पर अवरोही क्रम में व्यवस्थित न हो जाएँ। पैटर्न के आधार पर, दिए गए इनपुट के बाद आने वाले प्रश्नों के उत्तर दें।</p> <p>इनपुट: शिल्प 71 60 40 कला कौशल मस्तिष्क 83</p> <p>प्रश्न: चरण I की व्यवस्था क्या है?</p>
	<p>Art Craft Brain Skill 71 60 83 40</p> <p>कला शिल्प मस्तिष्क कौशल 71 60 83 40</p> <p>Art Brain Skill Craft 83 71 60 40</p> <p>कला मस्तिष्क कौशल शिल्प 83 71 60 40</p> <p>Art Craft Skill Brain 83 71 60 40</p> <p>कला शिल्प कौशल मस्तिष्क 83 71 60 40</p> <p>Art Craft Skill Brain 71 60 40 83</p> <p>कला शिल्प कौशल मस्तिष्क 71 60 40 83</p>
Q.No: 5	<p>In each of the following questions, two numbers are given which follow a certain logical or arithmetic relationship. Identify the same pattern and apply it to find the missing number in the second pair. Choose the correct option from the given alternatives.</p> <p>32654 : 54876 :: 51763 : ?</p> <p>निम्नलिखित प्रत्येक प्रश्न में दो संख्याएँ दी गई हैं जो एक निश्चित तार्किक या अंकगणितीय संबंध का पालन करती हैं। समान पैटर्न की पहचान कीजिए और दूसरे जोड़े में लुप्त संख्या ज्ञात करने के लिए इसका प्रयोग कीजिए। दिए गए विकल्पों में से सही विकल्प चुनिए।</p> <p>32654 : 54876 :: 51763 : ?</p>
	<p>73986</p> <p>73986</p> <p>74986</p> <p>74986</p> <p>72985</p> <p>72985</p> <p>73985</p> <p>73985</p>
Q.No: 6	<p>In each of the following questions, a specific relationship is given between two words. Identify the word that shares a similar semantic relationship with the given pair. Choose the most appropriate option from the four choices given below.</p> <p>Antonym : Opposite :: Synonym : ?</p> <p>निम्नलिखित प्रत्येक प्रश्न में दो शब्दों के बीच एक विशिष्ट संबंध दिया गया है। उस शब्द की पहचान कीजिए जो दिए गए युग्म के साथ समान अर्थ संबंध साझा करता है। नीचे दिए गए चार विकल्पों में से सबसे उपयुक्त विकल्प चुनिए।</p> <p>Antonym : Opposite :: Synonym : ?</p>
	<p>Equal</p> <p>बराबर</p> <p>Same</p> <p>वही</p> <p>Similar</p> <p>समान</p> <p>Meaning</p> <p>अर्थ</p>
Q.No: 7	<p>Eight friends A, B, C, D, E, F, G, and H are sitting around a circular table facing the center.</p> <p>A is second to the left of D.</p> <p>B is to the immediate right of A.</p> <p>C is opposite B.</p> <p>F is between C and D.</p> <p>H is not an immediate neighbor of D.</p> <p>G is to the immediate right of H.</p> <p>Who is sitting to the immediate left of H?</p>

आठ मित्र A, B, C, D, E, F, G और H एक वृत्ताकार मेज के चारों ओर केंद्र की ओर मुख करके बैठे हैं। A, D के बाएँ से दूसरे स्थान पर है। B, A के ठीक दाएँ है। C, B के विपरीत है। F, C और D के बीच में है। H, D का निकटतम पड़ोसी नहीं है। G, H के ठीक दाएँ है। H के ठीक बाएँ कौन बैठा है?	
E	
E	
<input checked="" type="radio"/>	
<input checked="" type="radio"/>	
F	
F	
G	
G	

Q.No: 8	Choose the odd one: Mercury, Venus, Earth, Pluto विषम चुनें: बुध, शुक्र, पृथ्वी, प्लूटो
Venus	
शुक्र	
Mercury	
बुध	
Earth	
पृथ्वी	
<input checked="" type="radio"/> Pluto	
<input checked="" type="radio"/> प्लूटो	

Q.No: 9	Complete the analogy: BCD : FGH :: JKL : ? सादृश्य पूरा करें: BCD : FGH :: JKL : ?
QRS	
QRS	
MNO	
MNO	
PQR	
PQR	
<input checked="" type="radio"/> NOP	
<input checked="" type="radio"/> NOP	

Q.No: 10	Complete the series: 3, 6, 11, 18, 27, ? श्रृंखला को पूरा करें: 3, 6, 11, 18, 27, ?
37	
37	
<input checked="" type="radio"/> 38	
<input checked="" type="radio"/> 38	
36	
36	
35	
35	

Q.No: 11	Statement: Resilience supports recovery from setbacks, but without learning from mistakes, progress may stall. Conclusion I: Resilience alone may not ensure progress. Conclusion II: Learning from mistakes guarantees recovery. Which conclusion follows?
----------	--

कथन: लचीलापन असफलताओं से उबरने में मदद करता है, लेकिन गलतियों से सीखे बिना, प्रगति रुक सकती है।

निष्कर्ष I: अकेला लचीलापन प्रगति सुनिश्चित नहीं कर सकता।

निष्कर्ष II: गलतियों से सीखना पुनर्प्राप्ति की गारंटी देता है।

कौन सा निष्कर्ष अनुसरण करता है?

Both conclusion I and II follow

निष्कर्ष I और II दोनों अनुसरण करते हैं।

Neither conclusion I nor II follows

न तो निष्कर्ष I और न ही II अनुसरण करता है

Only conclusion II follows

केवल निष्कर्ष II अनुसरण करता है

Only conclusion I follows

केवल निष्कर्ष I अनुसरण करता है

Q.No: 12 Select the odd one: Painting, Sketching, Sculpting, Dancing

विषम चुनें: चित्रकारी, रेखाचित्रण, मूर्तिकला, नृत्य

Sketching

रेखाचित्रण

Dancing

नृत्य

Painting

चित्रकारी

Sculpting

मूर्तिकला

Q.No: 13 Read the following statement carefully and identify the conclusion that follows.

Statement: "Government should provide free education to all children up to the age of 14."

Conclusions:

I. Education is a basic right of every child.

II. A large number of children are deprived of basic education.

निम्नलिखित कथन को ध्यान से पढ़ें और निष्कर्ष निकालें।

कथन: "सरकार को 14 वर्ष की आयु तक के सभी बच्चों को निःशुल्क शिक्षा प्रदान करनी चाहिए।"

निष्कर्ष:

I. शिक्षा प्रत्येक बच्चे का मूल अधिकार है।

II. बड़ी संख्या में बच्चे बुनियादी शिक्षा से वंचित हैं।

Neither conclusion I nor II follows

न तो निष्कर्ष I और न ही II अनुसरण करता है

Only conclusion II follows

केवल निष्कर्ष II अनुसरण करता है

Only conclusion I follows

केवल निष्कर्ष I अनुसरण करता है

Both conclusions I and II follow

दोनों निष्कर्ष I और II अनुसरण करते हैं

Q.No: 14 If + means -, ÷ means +, - means ×, and × means ÷ then, what is $35 \div 7 - 5 + 20$?

यदि + का अर्थ - है, ÷ का अर्थ + है, - का अर्थ × है, और × का अर्थ ÷ है, तो $35 \div 7 - 5 + 20$ क्या है?

45

45

40

40

50

50

35

35

Q.No: 15	Complete the following series: B, D, G, K, ? निम्नलिखित श्रृंखला को पूरा करें: B, D, G, K, ?
	<input type="radio"/> P
	<input type="radio"/> Q
	<input type="radio"/> R
	<input type="radio"/> M
	<input type="radio"/> M

Q.No: 16	38, 57, 76, 95, 118 - which is the odd one out? 38, 57, 76, 95, 118 - इनमें से कौन सा विषम है?
	<input type="radio"/> 76
	<input type="radio"/> 76
	<input checked="" type="radio"/> 118
	<input type="radio"/> 118
	<input type="radio"/> 57
	<input type="radio"/> 57
	<input type="radio"/> 38
	<input type="radio"/> 38

Q.No: 17	In each of the following questions, a pair of words (letter sequences) is given on the left-hand side of the double colon (::), which follows a certain alphabetical pattern. Identify the logic in the first pair and apply the same logic to the third word to find the correct corresponding word from the options. LID : KIC :: CUP : ? निम्नलिखित प्रत्येक प्रश्न में, दोहरे कोलन (::) के बाईं ओर शब्दों का एक युग्म (अक्षर क्रम) दिया गया है, जो एक निश्चित वर्णमाला क्रम का अनुसरण करता है। पहले युग्म में तर्क की पहचान कीजिए और विकल्पों में से सही संगत शब्द ज्ञात करने के लिए उसी तर्क को तीसरे शब्द पर लागू कीजिए। LID : KIC :: CUP : ?
	<input type="radio"/> SLW
	<input type="radio"/> SLW
	<input type="radio"/> LOW
	<input type="radio"/> LOW
	<input checked="" type="radio"/> FLO
	<input type="radio"/> FLO
	<input type="radio"/> FLO

Q.No: 18	Hyundai, Ford, Apple, Toyota – which brand doesn't fit? हुंडई, फोर्ड, एप्पल, टोयोटा - कौन सा ब्रांड उपयुक्त नहीं है?
	<input type="radio"/> Toyota
	<input type="radio"/> टोयोटा
	<input checked="" type="radio"/> Apple
	<input type="radio"/> एप्पल
	<input type="radio"/> Ford
	<input type="radio"/> फोर्ड
	<input type="radio"/> Hyundai
	<input type="radio"/> हुंडई

Q.No: 19	Read the situation and choose the best judgment: You live in a residential area and notice that your neighbor, who lives a few houses down, frequently leaves their trash bins out for days after collection, often overflowing and attracting stray animals. This is becoming a recurring nuisance for the neighborhood. Question: Given this situation, which of the following is the most ethical and responsible action?
----------	--

स्थिति को ध्यान से पढ़ें और सर्वोत्तम निर्णय चुनें:

आप एक रिहायशी इलाके में रहते हैं और देखते हैं कि आपका पड़ोसी, जो कुछ ही घरों की दूरी पर रहता है, अक्सर कचरा इकट्ठा करने के बाद कई दिनों तक अपना कचरादान बाहर छोड़ देता है, जिससे अक्सर कचरा भर जाता है और आवारा जानवर उसमें आ जाते हैं। यह आस-पड़ोस के लिए एक बार-बार होने वाली समस्या बनती जा रही है।

प्रश्न: इस स्थिति में, निम्नलिखित में से कौन सा सबसे नैतिक और ज़िम्मेदाराना कदम है?

Gather other neighbors and collectively confront the person angrily about their actions.

अन्य पड़ोसियों को इकट्ठा करें और सामूहिक रूप से उस व्यक्ति से उसके कार्यों के बारे में गुस्से से बात करें।

Secretly take photos of their overflowing bins and send them to the local municipal authority to report a code violation.

गुप्त रूप से अपने ओवरफ्लो हो रहे कूड़ेदानों की तस्वीरें लें और उन्हें स्थानीय नगरपालिका प्राधिकरण को भेजें ताकि संहिता उल्लंघन की रिपोर्ट की जा सके।

Approach your neighbor calmly and politely to discuss the issue, explaining the impact it's having on the neighborhood.

अपने पड़ोसी के पास शांतिपूर्वक और विनम्रता से जाकर इस मुद्दे पर चर्चा करें तथा उसे बताएं कि इसका पड़ोस पर क्या प्रभाव पड़ रहा है।

Start cleaning up their spilled trash yourself to avoid further nuisance, without mentioning it to them.

आगे की परेशानी से बचने के लिए, उन्हें बताएं बिना, उनके फैले हुए कचरे को स्वयं साफ करना शुरू कर दें।

Q.No: 20 Find the missing term: 4, 9, 19, 39, ?

लुप्त पद ज्ञात कीजिए: 4, 9, 19, 39, ?

59

59

69

69

49

49

79

79

Q.No: 21 If in a certain language, TEAM = 5514 and LARK = 8914, then what is the code for BEAM?

यदि किसी निश्चित भाषा में TEAM = 5514 और LARK = 8914 है, तो BEAM का कोड क्या होगा?

3514

3514

3544

3544

3512

3512

3214

3214

Q.No: 22 A student is struggling with time management for an upcoming entrance exam. What would be the most effective decision to address this issue?

एक छात्र आगामी प्रवेश परीक्षा के लिए समय प्रबंधन से जूझ रहा है। इस समस्या को हल करने के लिए सबसे प्रभावी निर्णय क्या होगा?

Leave preparation to the last week

तैयारी अंतिम सप्ताह तक छोड़ देना

Focus only on favourite subjects

केवल पसंदीदा विषयों पर ध्यान केंद्रित करना

Study all night and skip sleep

सारी रात पढ़ाई करना और सोना छोड़ देना

Make a realistic study timetable and follow it

एक यथार्थवादी अध्ययन समय सारिणी बनाना और उसका पालन करना

Q.No: 23 In each question below, two pairs of letters are given. The first pair has a specific relationship between its letters. Identify the relationship and choose the correct option that completes the second pair in the same way.

DC : FA :: HE : ?

नीचे दिए गए प्रत्येक प्रश्न में अक्षरों के दो युग्म दिए गए हैं। पहले युग्म के अक्षरों के बीच एक विशिष्ट संबंध है। संबंध पहचानिए और उस सही विकल्प का चयन कीजिए जो दूसरे युग्म को भी इसी प्रकार पूरा करता है।

DC : FA :: HE : ?

JG
JG
FJ
FJ
GF
GF
H
H

Q.No: 24 A car travels 50 km West, then turns around and travels 30 km East. What is the car's final position relative to its starting point?
एक कार 50 किमी पश्चिम की ओर चलती है, फिर मुड़कर 30 किमी पूर्व की ओर चलती है। कार की अपने प्रारंभिक बिंदु के सापेक्ष अंतिम स्थिति क्या है?

20 km West
20 किमी पश्चिम
20 km East
20 किमी पूर्व
30 km West
30 किमी पश्चिम
80 km West
80 किमी पश्चिम

Q.No: 25 Seven people – G, H, I, J, K, L, and M – are sitting in a straight line facing North.
H is sitting fourth to the left of K.
J is to the immediate right of I.
Only one person sits between M and G.
I is not an immediate neighbor of H.
Who sits at the extreme left end?

सात व्यक्ति - G, H, I, J, K, L और M - उत्तर दिशा की ओर मुख करके एक सीधी रेखा में बैठे हैं।
H, K के बाएँ से चौथे स्थान पर बैठा है।
J, I के ठीक दाएँ है।
M और G के बीच केवल एक व्यक्ति बैठा है।
I, H का निकटतम पड़ोसी नहीं है।
सबसे बाएँ छोर पर कौन बैठा है?

B
B
H
H
A
A
G
G

Q.No: 26 Seven people – P, Q, R, S, T, U, and V – are sitting in a row facing North.
S is fourth to the left of V.
Only one person sits between T and S.
P is not next to T.
R is not at any extreme end.
U is to the immediate left of V.
Question: Who is sitting exactly in the middle?

सात लोग - P, Q, R, S, T, U, और V - एक पंक्ति में उत्तर की ओर मुँह करके बैठे हैं।
S, V के बाएँ से चौथे स्थान पर है।
T और S के बीच केवल एक व्यक्ति बैठा है।
P, T के बगल में नहीं है।
R किसी भी अंतिम छोर पर नहीं है।
U, V के ठीक बाएँ है।
प्रश्न: ठीक बीच में कौन बैठा है?

U
U
R
R
S

S
Q
Q

Q.No: 27 Which group is different from the others?
कौन सा समूह अन्य से अलग है?

64
64
125
125
100
100
27
27

Q.No: 28 Read the situation and choose the best judgment:
A student finds the answer key of an upcoming exam by mistake in a professor's office. What should the student do?
स्थिति को समझें और सर्वोत्तम निर्णय लें:
एक छात्र को आगामी परीक्षा की उत्तर कुंजी गलती से एक प्रोफेसर के कार्यालय में मिल जाती है। छात्र को क्या करना चाहिए?

Keep it to use later
इसे बाद में उपयोग के लिए रखें
Return it to the professor without disclosing its contents
इसकी विषय-वस्तु का खुलासा किए बिना इसे प्रोफेसर को लौटा दें
Share it with friends
इसे दोस्तों के साथ साझा करें
Memorize the answers
उत्तर याद रखें

Q.No: 29 Read the information carefully and identify the correct relationship between the persons mentioned in the question.
A is the father of B.
C is the son of A.
D is the brother of E.
E is the daughter of B.
Question: How is C related to D?
दी गई जानकारी को ध्यानपूर्वक पढ़ें और प्रश्न में उल्लिखित व्यक्तियों के बीच सही संबंध पहचानें।
A, B का पिता है।
C, A का पुत्र है।
D, E का भाई है।
E, B की पुत्री है।
प्रश्न: C, D से किस प्रकार संबंधित है?

Brother
भाई
Uncle
चाचा
Father
पिता
Cousin
चचेरा

Q.No: 30	<p>Read the following statements and conclusions carefully. Decide which of the conclusions logically follow from the statements, disregarding commonly known facts. Use only the information provided in the statements and apply standard syllogistic logic.</p> <p>Statements: All Dogs are Mammals. All Mammals are Animals. Some Animals are Pets.</p> <p>Conclusions: (1) All Dogs are Animals. (2) Some Mammals are Pets. (3) Some Dogs are Pets. (4) No Dog is a Pet.</p> <p>निम्नलिखित कथनों और निष्कर्षों को ध्यानपूर्वक पढ़ें। सर्वज्ञात तथ्यों को नज़रअंदाज़ करते हुए, निर्णय करें कि कौन सा निष्कर्ष कथनों का तार्किक रूप से अनुसरण करता है। केवल कथनों में दी गई जानकारी का उपयोग करें और मानक न्यायवाक्य लागू करें।</p> <p>कथन: सभी कुत्ते स्तनधारी हैं। सभी स्तनधारी जानवर हैं। कुछ जानवर पालतू जानवर हैं।</p> <p>निष्कर्ष: (1) सभी कुत्ते जानवर हैं। (2) कुछ स्तनधारी पालतू जानवर हैं। (3) कुछ कुत्ते पालतू जानवर हैं। (4) कोई भी कुत्ता पालतू जानवर नहीं है।</p> <p>All (1), (2), (3), and (4) follow</p> <p>सभी (1), (2), (3), और (4) अनुसरण करते हैं</p> <p>Only (1), (2), and (3) follow</p> <p>केवल (1), (2), और (3) अनुसरण करते हैं</p> <p>Only (1) follows</p> <p>केवल (1) अनुसरण करता है</p> <p>Only (1) and (2) follow</p> <p>केवल (1) और (2) अनुसरण करते हैं</p>
Q.No: 31	<p>A word-and-number arrangement machine rearranges a given input following a specific rule in each step. The rule involves moving the alphabetically smallest word to the leftmost side and the numerically largest number to the rightmost side in each step. The process continues until all words are arranged in alphabetical order at the left end, and all numbers in descending order at the right end.</p> <p>Based on the pattern, answer the questions that follow the given input.</p> <p>Input: Dream 73 Alpha Beta 40 94 20 Code</p> <p>Question: Which is the correct Step I arrangement?</p> <p>एक शब्द-और-संख्या व्यवस्था मशीन प्रत्येक चरण में एक विशिष्ट नियम का पालन करते हुए दिए गए इनपुट को पुनर्व्यवस्थित करती है। इस नियम में प्रत्येक चरण में वर्णमाला के अनुसार सबसे छोटे शब्द को सबसे बाईं ओर और संख्यात्मक रूप से सबसे बड़ी संख्या को सबसे दाईं ओर ले जाना शामिल है। यह प्रक्रिया तब तक जारी रहती है जब तक कि सभी शब्द बाईं ओर वर्णमाला क्रम में और सभी संख्याएँ दाईं ओर अवरोही क्रम में व्यवस्थित न हो जाएँ। इस पैटर्न के आधार पर, दिए गए इनपुट के बाद आने वाले प्रश्नों के उत्तर दें।</p> <p>इनपुट: ड्रीम 73 अल्फा बीटा 40 94 20 कोड</p> <p>प्रश्न: चरण I की सही व्यवस्था कौन सी है?</p> <p>Alpha Dream Beta Code 94 73 40 20</p> <p>अल्फा ड्रीम बीटा कोड 94 73 40 20</p> <p>Alpha Beta Dream Code 94 73 40 20</p> <p>अल्फा बीटा ड्रीम कोड 94 73 40 20</p> <p>Alpha Beta Code Dream 73 94 40 20</p> <p>अल्फा बीटा कोड ड्रीम 73 94 40 20</p> <p>Alpha Beta Code Dream 94 73 40 20</p> <p>अल्फा बीटा कोड ड्रीम 94 73 40 20</p>
Q.No: 32	<p>What number will be present in place of the question mark?: 5, 11, 23, 47, ?</p> <p>प्रश्नवाचक चिन्ह के स्थान पर कौन सी संख्या आएगी?: 5, 11, 23, 47, ?</p> <p>96</p> <p>96</p>

71
71
83
83
95
95

Q.No: 33 In a class of 40 students, John is ranked 12th from the top. What is his rank from the bottom?

40 छात्रों की एक कक्षा में, जॉन को ऊपर से 12th रैंक मिली है। नीचे से उसकी रैंक क्या है?

28
28
27
27
29
29
30
30

Q.No: 34 A man goes 12 km North, turns East and walks 5 km, turns South and walks 3 km, then turns West and walks 5 km. How far is he from the starting point?

एक आदमी 12 किमी उत्तर की ओर जाता है, पूर्व की ओर मुड़कर 5 किमी चलता है, दक्षिण की ओर मुड़कर 3 किमी चलता है, फिर पश्चिम की ओर मुड़कर 5 किमी चलता है। वह प्रारंभिक बिंदु से कितनी दूर है?

17 km
17 किमी
9 km
9 किमी
15 km
15 किमी
12 km
12 किमी

Q.No: 35 Aditi walks 18 m South from her home to reach a grocery store. From there, she turns right and walks 12 m to reach a bakery. She then takes a left turn and walks 6 m to reach a bookstore. From the bookstore, she walks 24 m North to reach a clinic, then turns left and walks 12 m. In which direction and how far is her home from her final position?

अदिति अपने घर से 18 मीटर दक्षिण दिशा में चलकर एक किराने की दुकान तक पहुँचती है। वहाँ से, वह दाएँ मुड़ती है और 12 मीटर चलकर एक बेकरी तक पहुँचती है। फिर वह बाएँ मुड़ती है और 6 मीटर चलकर एक किताबों की दुकान तक पहुँचती है। किताबों की दुकान से, वह 24 मीटर उत्तर दिशा में चलकर एक क्लिनिक पहुँचती है, फिर बाएँ मुड़ती है और 12 मीटर चलती है। उसका घर उसके अंतिम स्थान से किस दिशा में और कितनी दूरी पर है?

12 m East
12 मीटर पूर्व
6 m North
6 मीटर उत्तर
24 m East
24 मीटर पूर्व
24 m West
24 मीटर पश्चिम

Q.No: 36 Out of 72 students, boys are twice girls. A girl is ranked 12th from top. If 5 boys are ahead of her, how many girls are after her?

72 छात्रों में से, लड़के लड़कियों से दोगुने हैं। एक लड़की ऊपर से 12वें स्थान पर है। यदि 5 लड़के उससे आगे हैं, तो उसके बाद कितनी लड़कियाँ हैं?

17
17
20
20
21
21

Q.No: 37 If TEACHER is written as TEACREH, how is FRIENDS written?
अगर TEACHER को TEACREH लिखा जाता है, तो FRIENDS को कैसे लिखा जाएगा?

FRESIND

FRESIND

FIRNEDS

FIRNEDS

FRIESND

FRIESND

FRIESDN

FRIESDN

Q.No: 38 If $+$ = $*$, $-$ = $+$, $*$ = $/$, $/$ = $-$; then,
what is $(4 + 5) * 2 - 3 / 1$?
यदि $+$ = $*$, $-$ = $+$, $*$ = $/$, $/$ = $-$; तो,
 $(4 + 5) * 2 - 3 / 1$ क्या है?

12

12

11

11

14

14

10

10

Q.No: 39 Read the following statements and conclusions carefully. Assume the statements are absolutely true, even if they contradict commonly known facts. Based solely on the statements, determine which of the conclusions logically follows.

Statements:

Some birds are eagles.

All eagles are fierce.

All fierce creatures are predators.

Conclusions:

(1) Some birds are fierce.

(2) Some birds are predators.

(3) All predators are fierce.

(4) No eagle is a predator.

निम्नलिखित कथनों और निष्कर्षों को ध्यानपूर्वक पढ़ें। मान लें कि कथन पूर्णतः सत्य हैं, भले ही वे सामान्यतः ज्ञात तथ्यों का खंडन करते हों। केवल कथनों के आधार पर, निर्धारित करें कि कौन सा निष्कर्ष तार्किक रूप से सही है।

कथन:

कुछ पक्षी चील हैं।

सभी चील खूंखार होते हैं।

सभी खूंखार जीव शिकारी होते हैं।

निष्कर्ष:

(1) कुछ पक्षी खूंखार होते हैं।

(2) कुछ पक्षी शिकारी होते हैं।

(3) सभी शिकारी खूंखार होते हैं।

(4) कोई भी चील शिकारी नहीं है।

Only (1), (3), and (4) follow

केवल (1), (3), और (4) अनुसरण करते हैं

Only (1) and (2) follow

केवल (1) और (2) अनुसरण करते हैं

Only (1) follows

केवल (1) अनुसरण करता है

All (1), (2), (3), and (4) follow

सभी (1), (2), (3), और (4) अनुसरण करते हैं

Q.No: 40	Choose the best sequence: 1. Proposal, 2. Planning, 3. Execution, 4. Completion, 5. Approval सर्वोत्तम क्रम चुनें: 1. प्रस्ताव, 2. योजना, 3. कार्यान्वयन, 4. समापन, 5. अनुमोदन
5, 1, 2, 3, 4	
5, 1, 2, 3, 4	
1, 5, 2, 3, 4	
1, 5, 2, 3, 4	
1, 2, 5, 3, 4	
1, 2, 5, 3, 4	
2, 1, 5, 3, 4	
2, 1, 5, 3, 4	

Q.No: 41	If $+$ = $*$, $-$ = $/$, $*$ = $+$, $/$ = $-$; then, what is $(5 + 2) * 3 - 4 / 2$? यदि $+$ = $*$, $-$ = $/$, $*$ = $+$, $/$ = $-$ हो; तो, $(5 + 2) * 3 - 4 / 2$ का मान क्या है?
7	
7	
10.67	
10.67	
9	
9	
8.75	
8.75	

Q.No: 42	Someone is speaking with you, and you strongly disagree with that person. What is the best socially intelligent reaction? कोई आपसे बात कर रहा है और आप उससे पूरी तरह असहमत हैं। सबसे अच्छी सामाजिक रूप से बुद्धिमान प्रतिक्रिया क्या होगी?
Interrupt them and argue with force today	
आज उन्हें टोकें और ज़ोर से बहस करें	
Walk away to avoid the argument now	
अब बहस से बचने के लिए वहाँ से चले जाएं	
Wait and then respond politely with reasons	
प्रतीक्षा करें और फिर विनम्रतापूर्वक कारण बताकर उत्तर दें	
Stay silent and gossip later about them	
चुप रहें और बाद में उनके बारे में गपशप करें	

Q.No: 43	In a series of patterns, each shape has one more dot than the previous. The first has 1 dot, the second 2 dots and the third 3 dots. What comes next? पैटर्न की एक श्रृंखला में, प्रत्येक आकृति में पिछले वाले से एक बिंदु ज्यादा है। पहले में 1 बिंदु है, दूसरे में 2 बिंदु हैं और तीसरे में 3 बिंदु हैं। इसके बाद क्या आता है?
Shape with 4 dots	
4 बिंदुओं वाला आकार	
Shape with 3 dots	
3 बिंदुओं वाला आकार	
Shape with 5 dots	
5 बिंदुओं वाला आकार	
Shape with 1 dot	

1 बिंदु वाला आकार

Q.No: 44 Class has 70 students. Boys = girls. Suman is 19th from top, 10 girls ahead. How many boys are behind her?

कक्षा में 70 छात्र हैं। लड़के = लड़कियाँ। सुमन ऊपर से 19वें स्थान पर है, 10 लड़कियाँ आगे। उसके पीछे कितने लड़के हैं?

20

20

27

27

23

23

21

21

Q.No: 45 Complete the following series: AB, CE, FH, ?

निम्नलिखित श्रृंखला को पूरा करें: AB, CE, FH, ?

KM

KM

JK

JK

IJ

IJ

HK

HK

Q.No: 46 If P says, "Q is the son of my father's only daughter," how is Q related to P?

अगर P कहता है, "Q मेरे पिता की इकलौती पुत्री का पुत्र है," तो Q का P से क्या संबंध है?

Nephew

भतीजा

Cousin

चचेरा

Son

पुत्र

Brother

भाई

Q.No: 47 Complete the following series: SCD, TEF, UGH, ____, WKL

निम्नलिखित श्रृंखला को पूरा करें: SCD, TEF, UGH, ____, WKL

IJT

IJT

CMN

CMN

VIJ

VIJ

UJI

UJI

Q.No: 48 A definite Input-Output process is given below. Study the arrangement rules carefully for the given input and follow them to answer the questions based on the new input. Input: **40 10 60 20 30**

Step I: 10 40 60 20 30

Step II: 10 20 40 60 30

Step III: 10 20 30 40 60

Last Step: 10 20 30 40 60

Based on the process shown above, answer the following question for the given input:

New Input: **75 25 85 35 15**

Question: What is the element at the 3rd position from the left in Step II of the new input?

नीचे एक निश्चित इनपुट-आउटपुट प्रक्रिया दी गई है। दिए गए इनपुट के लिए व्यवस्था नियमों का ध्यानपूर्वक अध्ययन करें और नए इनपुट पर आधारित प्रश्नों के उत्तर देने के लिए उनका पालन करें। इनपुट: **40 10 60 20 30**
 चरण I: 10 40 60 20 30
 चरण II: 10 20 40 60 30
 चरण III: 10 20 30 40 60
 अंतिम चरण: 10 20 30 40 60
 ऊपर दर्शाई गई प्रक्रिया के आधार पर, दिए गए इनपुट के लिए निम्नलिखित प्रश्न का उत्तर दें:
 नया इनपुट: **75 25 85 35 15**
प्रश्न: नए इनपुट के चरण II में बाएँ से तीसरे स्थान पर कौन सा तत्व है?

35

35

75

75

85

85

25

25

Q.No: 49 Find the missing term in the series: 235, 271, 349, 385, ?, 499

श्रृंखला में लुप्त पद ज्ञात कीजिए: 235, 271, 349, 385, ?, 499

421

421

313

313

411

411

463

463

Q.No: 50 Seven people – A, B, C, D, E, F, and G – are sitting in a row. All are facing north. C is sitting to the immediate right of D, who is third from the left. How many people are sitting to the right of C?

सात लोग - A, B, C, D, E, F, और G - एक पंक्ति में बैठे हैं। सभी उत्तर की ओर मुँह करके बैठे हैं। C, D के ठीक दाईं ओर बैठा है, जो बाएँ से तीसरा है। C के दाईं ओर कितने लोग बैठे हैं?

2

2

1

1

3

3

4

4

PART - B (General Awareness)

Q.No: 51 Where was the 72nd Senior National Volleyball Championship 2024 held?

72वीं सीनियर राष्ट्रीय वॉलीबॉल चैम्पियनशिप 2024 कहाँ आयोजित की गई?

Bangalore, Karnataka

बैंगलोर, कर्नाटक

Bhubaneswar, Odisha

भुवनेश्वर, ओडिशा

Guwahati, Assam

गुवाहाटी, असम

Mumbai, Maharashtra

मुंबई, महाराष्ट्र

Q.No: 52	What is the score of India in Corruption Perception Index published by Transparency International? ट्रांसपेरेंसी इंटरनेशनल द्वारा प्रकाशित भ्रष्टाचार धारणा सूचकांक में भारत का स्कोर क्या है?
38	
38	
48	
48	
150	
150	
300	
300	

Q.No: 53	A heating element of a heater is made of a material with high resistivity and high melting point. Which of the following material properties is most crucial for its function as a heating element? किसी हीटर का तापन तत्व उच्च प्रतिरोधकता और उच्च गलनांक वाले पदार्थ से बना होता है। निम्नलिखित में से कौन सा पदार्थ गुण, तापन तत्व के रूप में इसके कार्य के लिए सबसे महत्वपूर्ण है?
High modulus of elasticity	
उच्च प्रत्यास्थता मापांक	
High thermal conductivity	
उच्च तापीय चालकता	
Low specific heat capacity	
कम विशिष्ट ऊष्मा धारिता	
High resistivity	
उच्च प्रतिरोधकता	

Q.No: 54	Which of the following Biosphere Reserves is correctly matched with its state? निम्नलिखित में से कौन सा बायोस्फीयर रिजर्व अपने राज्य से सही ढंग से मेल खाता है?
Seshachalam Hills – Andhra Pradesh	
शेषचलम पहाड़ियाँ – आंध्र प्रदेश	
Dehang-Dibang – Meghalaya	
देहांग-दिबांग – मेघालय	
Pachmarhi – Gujarat	
पचमढ़ी – गुजरात	
Dibru-Saikhowa – Manipur	
डिब्रू-सैखोवा – मणिपुर	

Q.No: 55	Which state has the lowest population in India? भारत में सबसे कम जनसंख्या किस राज्य की है?
Manipur	
मणिपुर	
Arunachal Pradesh	
अरुणाचल प्रदेश	
Sikkim	
सिक्किम	
Mizoram	
मिजोरम	

Q.No: 56	According to Census 2011 which Indian State/UT has no Scheduled Tribe? 2011 की जनगणना के अनुसार किस भारतीय राज्य/संघ राज्य क्षेत्र में कोई अनुसूचित जनजाति नहीं है?
Kerala	
केरल	

Goa
गोवा
Puducherry
पुदुचेरी
Chhattisgarh
छत्तीसगढ़

Q.No: 57	Which of the following statements are correct about the PM MITRA Scheme ? 1. It aims to establish integrated large-scale textile parks. 2. It is implemented by the Ministry of Textiles. 3. The scheme promotes synergy among textile value chain segments. पीएम मित्र योजना के बारे में निम्नलिखित में से कौन से कथन सही हैं? 1. इसका उद्देश्य बड़े पैमाने पर एकीकृत कपड़ा पार्क स्थापित करना है। 2. इसका कार्यान्वयन कपड़ा मंत्रालय द्वारा किया जाता है। 3. यह योजना कपड़ा मूल्य श्रृंखला खंडों के बीच तालमेल को बढ़ावा देती है।
Only 1 and 3 are correct	
केवल 1 और 3 सही हैं	
Only 2 and 3 are correct	
केवल 2 और 3 सही हैं	
All 1, 2 and 3 are correct	
सभी 1, 2 और 3 सही हैं	
Only 1 and 2 are correct	
केवल 1 और 2 सही हैं	

Q.No: 58	Which type of placentation is characterized by the ovules developing on the inner wall of the ovary or on peripheral part, as seen in mustard and argemone? किस प्रकार के प्लेसेंटेशन की विशेषता अंडाशय की आंतरिक दीवार या परिधीय भाग पर विकसित होने वाले बीजांडों से होती है, जैसा कि सरसों और आर्जैमोन में देखा जाता है?
Parietal	
पार्श्वीय	
Free central	
मुक्त केंद्रीय	
Basal	
अधस्तली	
Axile	
धुरी	

Q.No: 59	Read the following statements carefully and choose the correct option: Assertion (A): The Santhal festival of Erok Sim marks the end of the agricultural season. Reason (R): The Magh Sim festival expresses gratitude for the harvest and prepares for a new cycle. निम्नलिखित कथनों को ध्यानपूर्वक पढ़ें और सही विकल्प चुनें: कथन (A): संथाल त्योहार एरोक सिम कृषि ऋतु के अंत का प्रतीक है। कारण (R): माघ सिम त्योहार फसल के प्रति कृतज्ञता व्यक्त करता है और एक नए चक्र की तैयारी करता है।
A is incorrect, but R is correct.	
A गलत है, लेकिन R सही है।	
Both A and R are correct, and R correctly explains A.	
A और R दोनों सही हैं, तथा R, A की सही व्याख्या करता है।	
Both A and R are correct, but R does not explain A.	
A और R दोनों सही हैं, लेकिन R, A की व्याख्या नहीं करता है।	
A is correct, but R is incorrect.	
A सही है, लेकिन R गलत है।	

Q.No: 60	A forest ecosystem experiences a prolonged drought. Which trophic level would likely experience the most immediate and severe impact on its biomass? एक वन पारिस्थितिकी तंत्र लंबे समय तक सूखे का अनुभव करता है। किस पोषण स्तर पर इसके जैवभार पर सबसे तत्काल और गंभीर प्रभाव पड़ने की संभावना है?
	Secondary consumers
	द्वितीयक उपभोक्ता
	Tertiary consumers
	तृतीयक उपभोक्ताओं
	Primary consumers
	प्राथमिक उपभोक्ता
	Producers
	प्रोड्यूसर्स

Q.No: 61	Which of the following statements correctly differentiates Alluvial soils from Red and Yellow soils? निम्नलिखित में से कौन सा कथन जलोढ़ मिट्टी को लाल और पीली मिट्टी से सही ढंग से अलग करता है?
	Alluvial: from rocks; Red/Yellow: river-transported जलोढ़: चट्टानों से; लाल/पीला: नदी द्वारा परिवहनित
	Alluvial: older types most fertile; Red/Yellow: colored by iron जलोढ़: पुराने प्रकार सबसे उपजाऊ; लाल/पीला: लोहे से रंगा हुआ
	Alluvial: sandy loam to clay; Red/Yellow: sandy loam, less fertile uplands जलोढ़: रेतीली दोमट से चिकनी मिट्टी; लाल/पीला: रेतीली दोमट, कम उपजाऊ ऊपरी भूमि
	Alluvial: rich in phosphorus and humus; Red/Yellow: rich in potash जलोढ़: फास्फोरस और ह्यूमस से भरपूर; लाल/पीला: पोटैश से भरपूर
	Alluvial: rich in phosphorus and humus; Red/Yellow: rich in potash जलोढ़: फास्फोरस और ह्यूमस से भरपूर; लाल/पीला: पोटैश से भरपूर

Q.No: 62	Which Mughal emperor is known for his extensive autobiography, Tuzuk-i-Jahangiri? वह मुगल सम्राट कौन था जिसकी आत्मकथा 'तुजुक-ए-जहाँगीरी' के रूप में प्रसिद्ध है?
	Jahangir
	जहाँगीर
	Akbar
	अकबर
	Shah Jahan
	शाहजहाँ
	Aurangzeb
	औरंगज़ेब

Q.No: 63	Barindra Kumar Ghosh, Abhinash Bhattacharya and Bhupendranath Dutta were associated with which movement in March 1906? मार्च 1906 में बरिन्द्र कुमार घोष, अभिनाश भट्टाचार्य और भूपेन्द्रनाथ दत्त किस आंदोलन से जुड़े थे?
	Swadeshi movement
	स्वदेशी आंदोलन
	Anti Bangal partition movement
	बंगाल विभाजन विरोधी आंदोलन
	Quit India movement
	भारत छोड़ो आंदोलन
	Movement against Bengal educational reforms
	बंगाल शैक्षिक सुधारों के खिलाफ आंदोलन

Q.No: 64	What is the aim of Ayushman Bharat scheme? आयुष्मान भारत योजना का उद्देश्य क्या है?
	Clean drinking water for all
	सभी के लिए स्वच्छ पेयजल

Health insurance for the poor

गरीबों के लिए स्वास्थ्य बीमा

Free education to children

बच्चों को निःशुल्क शिक्षा

Housing for the poor

गरीबों के लिए आवास

Q.No: 65 A factory purchases machinery worth ₹50 lakh. At the end of the year, depreciation is ₹5 lakh. What is the **Net Investment** made by the firm?

एक फैक्ट्री ₹50 लाख मूल्य की मशीनरी खरीदती है। वर्ष के अंत में मूल्यह्रास ₹5 लाख है। फर्म द्वारा किया गया शुद्ध निवेश कितना है?

₹45 lakh

₹45 लाख

₹55 lakh

₹55 लाख

₹5 lakh

₹5 लाख

₹50 lakh

₹50 लाख

Q.No: 66 Consider the following statements and choose correct option:

Statement 1: Kriti is a highly structured musical composition in Carnatic tradition.

Statement 2: Tillana often concludes a Carnatic recital and emphasizes rhythmic syllables.

निम्नलिखित कथनों पर विचार कीजिए और सही विकल्प चुनिए:

कथन 1: कृति कर्नाटक परंपरा में एक उच्च संरचित संगीत रचना है।

कथन 2: तिल्लना अक्सर कर्नाटक गायन का समापन करती है और लयबद्ध अक्षरों पर जोर देती है।

Both 1 and 2 are correct

1 और 2 दोनों सही हैं

Only 1

केवल 1

Only 2

केवल 2

Neither 1 nor 2 is correct

न तो 1 और न ही 2 सही है

Not Answered

Q.No: 67 Match the port/corridor with its strategic benefit to India

Column A (Port/Corridor)	Column B (Strategic Benefit to India)
A. Chabahar Port	1. Links India with Europe via Middle East
B IMEC	2. New age of transportation between the two countries India to Southeast Asia via Mizoram–Myanmar link
C. Sittwe Port	3. Access to Central Asia bypassing Pakistan

निम्नलिखित बंदरगाहों/गलियारों (स्तंभ A) का मिलान उनके भारत के लिए रणनीतिक लाभ (स्तंभ B) से कीजिए।

स्तंभ A (बंदरगाह / गलियारा)	स्तंभ B (भारत के लिए रणनीतिक लाभ)
A. चाबहार बंदरगाह	1. भारत को मध्य पूर्व के माध्यम से यूरोप से जोड़ता है
B. आईएमईसी	2. भारत से दक्षिण-पूर्व एशिया तक मिजोरम-म्यांमार संपर्क के माध्यम से परिवहन का नया युग
C. सित्तवे बंदरगाह	3. पाकिस्तान को बायपास करके मध्य एशिया तक पहुँच

A → 3, B → 1, C → 2

A → 3, B → 1, C → 2

A → 2, B → 3, C → 1

A → 2, B → 3, C → 1

A → 3, B → 2, C → 1

A → 3, B → 2, C → 1

A → 1, B → 2, C → 3

A → 1, B → 2, C → 3

Not Answered

Q.No: 68 What is the primary reason for the asymmetrical distribution of continents and oceans across the Earth's surface?

पृथ्वी की सतह पर महाद्वीपों और महासागरों के विषम वितरण का प्राथमिक कारण क्या है?

Seafloor spreading and plate tectonics.

समुद्रतल का फैलाव और प्लेट टेक्टोनिक्स

Earth's elliptical orbit

पृथ्वी की अण्डाकार कक्षा

Magnetic anomalies in the core

कोर में चुंबकीय विसंगतियाँ

Variations in solar radiation

सौर विकिरण में भिन्नताएँ

Q.No: 69 Which solar phenomenon is responsible for disturbances in Earth's magnetic field?

पृथ्वी के चुंबकीय क्षेत्र में गड़बड़ी के लिए कौन सी सौर घटना जिम्मेदार है?

Sunspots

सूर्य के धब्बे

Solar flares

सौर ज्वालाएँ

Chromosphere heating

क्रोमोस्फीयर हीटिंग

Photospheric cooling

प्रकाशमंडलीय शीतलन

Q.No: 70 In the Climate Change Performance Index 2025, why did India retain a top-10 spot unlike several developed economies?

जलवायु परिवर्तन प्रदर्शन सूचकांक 2025 में भारत कई विकसित अर्थव्यवस्थाओं के विपरीत शीर्ष 10 स्थान पर क्यों बना रहा?

High renewable energy share and low per capita emissions

उच्च नवीकरणीय ऊर्जा हिस्सेदारी और कम प्रति व्यक्ति उत्सर्जन

Lack of net-zero policy

नेट-शून्य नीति का अभाव

Aggressive fossil fuel expansion

आक्रामक जीवाश्म ईंधन विस्तार

High energy consumption per capita

प्रति व्यक्ति उच्च ऊर्जा खपत

Q.No: 71	Which of the following quantities remains conserved when an object moves under the gravitational pull of another object? जब एक वस्तु किसी अन्य वस्तु के गुरुत्वाकर्षण खिंचाव के अंतर्गत चलती है तो निम्नलिखित में से कौन सी राशि संरक्षित रहती है?
	Only linear momentum केवल रैखिक गति
	Potential energy and linear momentum स्थितिज ऊर्जा और रेखीय संवेग
	Kinetic energy and linear momentum गतिज ऊर्जा और रेखीय संवेग
	Angular momentum and mechanical energy कोणीय संवेग और यांत्रिक ऊर्जा

Q.No: 72	Which policy reform targeted improving competitiveness and efficiency of the banking system after 1991? 1991 के बाद किस नीति सुधार का लक्ष्य बैंकिंग प्रणाली की प्रतिस्पर्धात्मकता और दक्षता में सुधार करना था?
	Introduction of prudential norms and CRAR विवेकपूर्ण मानदंडों और सीआरएआर का परिचय
	Limiting foreign entry into retail banking खुदरा बैंकिंग में विदेशी प्रवेश को सीमित करना
	Full deregulation of credit markets ऋण बाजारों का पूर्ण विनियमन
	Nationalization of cooperative banks सहकारी बैंकों का राष्ट्रीयकरण

Q.No: 73	The regulatory framework adopted by India between 1947 and 1990, often referred to as the "License Raj," aimed to direct economic activity. While it had certain intended benefits, what was a significant unintended negative consequence often associated with this system? 1947 और 1990 के बीच भारत द्वारा अपनाए गए विनियामक ढांचे को अक्सर "लाइसेंस राज" के रूप में संदर्भित किया जाता है, जिसका उद्देश्य आर्थिक गतिविधि को निर्देशित करना था। हालाँकि इसके कुछ इच्छित लाभ थे, लेकिन इस प्रणाली से अक्सर जुड़ा एक महत्वपूर्ण अनपेक्षित नकारात्मक परिणाम क्या था?
	A rapid increase in the quality and global competitiveness of Indian-made goods due to stringent quality control measures. कड़े गुणवत्ता नियंत्रण उपायों के कारण भारतीय निर्मित वस्तुओं की गुणवत्ता और वैश्विक प्रतिस्पर्धात्मकता में तेजी से वृद्धि।
	The fostering of a highly competitive market environment with numerous players in each industry. प्रत्येक उद्योग में अनेक खिलाड़ियों के साथ अत्यधिक प्रतिस्पर्धी बाजार वातावरण को बढ़ावा देना।
	The creation of barriers to entry for new businesses potentially stifling innovation and leading to inefficiencies. नये व्यवसायों के प्रवेश में बाधाएं उत्पन्न होने से नवाचार में बाधा उत्पन्न हो सकती है तथा अकुशलताएं पैदा हो सकती हैं।
	A significant reduction in corruption and bureaucratic delays in obtaining necessary approvals for economic activities. आर्थिक गतिविधियों के लिए ज़रूरी अनुमोदन प्राप्त करने में भ्रष्टाचार और नौकरशाही देरी में उल्लेखनीय कमी।

Q.No: 74	Odissi classical dance originated in which Indian state? ओडिसी शास्त्रीय नृत्य भारत के किस राज्य में उत्पन्न हुआ?
	Gujarat गुजरात
	Odisha ओडिशा
	Bihar बिहार
	Assam असम

Q.No: 75	As per the Bharatiya Nagarik Suraksha Sanhita, 2023, which of the following best defines "electronic communication"? भारतीय नागरिक सुरक्षा संहिता, 2023 के अनुसार, निम्नलिखित में से कौन "इलेक्ट्रॉनिक संचार" को सबसे अच्छी तरह परिभाषित करता है?
	Any information transmitted using electronic devices like phones or computers फ़ोन या कंप्यूटर जैसे इलेक्ट्रॉनिक उपकरणों का उपयोग करके प्रेषित कोई भी जानकारी
	Only video calls conducted through secure government networks केवल सुरक्षित सरकारी नेटवर्क के माध्यम से की जाने वाली वीडियो कॉल
	Telephonic conversations recorded manually मैन्युअल रूप से रिकॉर्ड की गई टेलीफोनिक बातचीत
	Verbal messages sent through written documents only मौखिक संदेश केवल लिखित दस्तावेजों के माध्यम से भेजे जाते हैं

Q.No: 76	Which of the following best reflects the constitutional dilemma in implementing the Uniform Civil Code (UCC) in India, as discussed in debates surrounding Article 44 and Article 25? निम्नलिखित में से कौन सा कथन भारत में समान नागरिक संहिता (यूसीसी) को लागू करने में संवैधानिक दुविधा को सबसे अच्छी तरह से दर्शाता है, जैसा कि अनुच्छेद 44 और अनुच्छेद 25 के आसपास की बहस में चर्चा की गई है?
	UCC allows gender-based personal law systems to remain untouched under Article 14 यूसीसी अनुच्छेद 14 के तहत लिंग-आधारित व्यक्तिगत कानून प्रणालियों को अछूता रहने की अनुमति देता है
	UCC enforces cooperative federalism by giving states legislative powers on personal law यूसीसी राज्यों को पर्सनल लॉ पर विधायी शक्तियां देकर सहकारी संघवाद को लागू करता है
	UCC operationalises the secular ethos by completely eliminating all religious laws यूसीसी सभी धार्मिक कानूनों को पूरी तरह से समाप्त करके धर्मनिरपेक्ष लोकाचार को क्रियान्वित करता है
	UCC aligns with Article 44 but may be seen to infringe upon religious freedom under Article 25 यूसीसी अनुच्छेद 44 के अनुरूप है, लेकिन इसे अनुच्छेद 25 के तहत धार्मिक स्वतंत्रता का उल्लंघन माना जा सकता है

Q.No: 77	The system of federalism in India divides power between: भारत में संघवाद की व्यवस्था किस प्रकार की शक्ति-विभाजन प्रणाली पर आधारित है?
	Centre and States केंद्र और राज्य
	Lok Sabha and Rajya Sabha लोकसभा और राज्यसभा दोनों
	President and Governors राष्ट्रपति और राज्यपाल
	Executive and Judiciary कार्यपालिका और न्यायपालिका

Q.No: 78	Identify the correct interpretation of Gross National Product (GNP) . सकल राष्ट्रीय उत्पाद (जीएनपी) की सही व्याख्या की पहचान करें।
	Income of foreigners in India भारत में विदेशियों की आय
	Income earned by Indians at home and abroad भारतीयों द्वारा देश और विदेश में अर्जित आय
	Income earned by Indians only within India भारतीयों द्वारा केवल भारत के भीतर अर्जित आय
	Income earned by residents and non-residents within India भारत के निवासियों और गैर-निवासियों द्वारा अर्जित आय

Q.No: 79	The Preamble to the Indian Constitution declares India to be a Sovereign, Socialist, Secular, Democratic Republic. Which of these terms were added to the Preamble by the 42 nd Constitutional Amendment Act, 1976? भारतीय संविधान की प्रस्तावना भारत को एक संप्रभु, समाजवादी, धर्मनिरपेक्ष, लोकतांत्रिक गणराज्य घोषित करती है। 42 nd संविधान संशोधन अधिनियम, 1976 द्वारा प्रस्तावना में इनमें से कौन से शब्द जोड़े गए?
----------	--

Socialist, Secular
समाजवादी, धर्मनिरपेक्ष
Sovereign, Democratic
संप्रभु, लोकतांत्रिक
Republic, Democratic
गणतंत्र, लोकतांत्रिक
Justice, Liberty
न्याय, स्वतंत्रता

Q.No: 80	Which of the following best explains the reason to held Qandhar strategically important for the Mughals? निम्नलिखित में से कौन सा कथन मुगलों के लिए कंधार को रणनीतिक रूप से महत्वपूर्ण मानने का सबसे अच्छा कारण बताता है?
	It provided direct naval access to the Red Sea for Mughal expeditions. इसने मुगल अभियानों के लिए लाल सागर तक सीधी नौसैनिक पहुंच प्रदान की।
	It served as a religious pilgrimage center linking India with Central Asian Sufi shrines. यह भारत को मध्य एशियाई सूफी तीर्थस्थलों से जोड़ने वाले धार्मिक तीर्थस्थल के रूप में कार्य करता था।
	It was a crucial trade hub connecting the Arabian Sea with the Persian Gulf. यह अरब सागर को फारस की खाड़ी से जोड़ने वाला एक महत्वपूर्ण व्यापार केंद्र था।
	It controlled key land routes between Kabul and Herat and acted as a fortified military outpost. यह काबुल और हेरात के बीच प्रमुख भूमि मार्गों को नियंत्रित करता था तथा एक सुदृढ़ सैन्य चौकी के रूप में कार्य करता था।

Q.No: 81	Statutory grants to states by the Union government, under Article 275 of the Constitution, are primarily recommended by which body? संविधान के अनुच्छेद 275 के अंतर्गत केंद्र सरकार द्वारा राज्यों को दिए जाने वाले वैधानिक अनुदान की अनुशंसा मुख्यतः किस निकाय द्वारा की जाती है?
	National Development Council राष्ट्रीय विकास परिषद
	Finance Commission वित्त आयोग
	Ministry of Finance वित्त मंत्रित्व
	NITI Aayog नीति आयोग

Q.No: 82	Which of the following authors did NOT receive the Nobel Prize in Literature? निम्नलिखित में से किस लेखक को साहित्य में नोबेल पुरस्कार नहीं मिला?
	Orhan Pamuk ओरहान पामुक
	Haruki Murakami हारुकी मुराकामी
	Alice Munro एलिस मुनरो
	Kazuo Ishiguro काजुओ इशिगुरो
	Not Answered

Q.No: 83	Which dynasty was founded by Dantidurga in the mid-8th century? आठवीं शताब्दी के मध्य में दन्तिदुर्ग द्वारा किस राजवंश की स्थापना की गई थी?
	Rashtrakuta Dynasty राष्ट्रकूट वंश
	Chola Dynasty चोल वंश

Pala Dynasty

पाल वंश

Pratihara Dynasty

प्रतिहार वंश

Q.No: 84 Who will fly to ISS under Axiom-4 mission in June 2025?

जून 2025 में एक्सिओम-4 मिशन के तहत आईएसएस के लिए कौन उड़ान भरेगा?

Gagandeep Singh

गगनदीप सिंह

Sunita Williams

सुनीता विलियम्स

Shubhanshu Shukla

शुभांशु शुक्ला

Prasanth Nair

प्रशांत नायर

Q.No: 85 In the context of India's trade policies between 1947 and 1990, what was a common characteristic of the approach towards imports?

1947 और 1990 के बीच भारत की व्यापार नीतियों के संदर्भ में, आयात के प्रति दृष्टिकोण की एक सामान्य विशेषता क्या थी?

Promoting imports as a way to boost domestic competition.

घरेलू प्रतिस्पर्धा को बढ़ावा देने के लिए आयात को बढ़ावा देना।

Primarily focusing on the import of luxury goods and consumer durables.

मुख्य रूप से विलासिता की वस्तुओं और उपभोक्ता टिकाऊ वस्तुओं के आयात पर ध्यान केंद्रित किया जाएगा।

Following a strategy of import substitution to protect domestic industries.

घरेलू उद्योगों की सुरक्षा के लिए आयात प्रतिस्थापन की रणनीति अपनाना।

Encouraging unrestricted import of all goods.

सभी वस्तुओं के अप्रतिबंधित आयात को प्रोत्साहित करना।

Q.No: 86 According to the classification of modern Indian languages, which linguistic family accounts for the largest share of the Indian population?

आधुनिक भारतीय भाषाओं के वर्गीकरण के अनुसार, किस भाषाई परिवार का भारतीय जनसंख्या में सबसे बड़ा हिस्सा है?

Sino-Tibetan (Kirata)

सिनो-तिब्बती (किराता)

Dravidian

द्रविड़

Austic (Nishada)

ऑस्ट्रियाई (मनोरंजन)

Indo-European (Aryan)

इंडो-यूरोपियन (आर्यन)

Q.No: 87 Which of the following pairs is **incorrectly** matched?

निम्नलिखित में से कौन सा **युग्म गलत सुमेलित** है?

Swadesh Darshan – Ministry of Culture

स्वदेश दर्शन – संस्कृति मंत्रालय

PM MITRA – Ministry of Textiles

पीएम मित्र - कपड़ा मंत्रालय

Beti Bachao Beti Padhao – Ministry of Women & Child Dev.

बेटी बचाओ बेटी पढ़ाओ - महिला एवं बाल विकास मंत्रालय।

PM JANMAN – Ministry of Tribal Affairs

पीएम जनमन - जनजातीय कार्य मंत्रालय

Q.No: 88	What is the primary mission behind India's involvement in the International North-South Transport Corridor (INSTC)? अंतर्राष्ट्रीय उत्तर-दक्षिण परिवहन गलियारे (आईएनएसटीसी) में भारत की भागीदारी के पीछे प्राथमिक मिशन क्या है?
	To promote clean maritime security स्वच्छ समुद्री सुरक्षा को बढ़ावा देना
	To bypass China's CPEC route via Taiwan ताइवान के रास्ते चीन के सीपीईसी मार्ग को बायपास करना
	To improve connectivity with Eurasia via multimodal routes मल्टीमॉडल मार्गों के माध्यम से यूरेशिया के साथ संपर्क में सुधार करना
	To facilitate transit trade through the Arctic आर्कटिक के माध्यम से पारगमन व्यापार को सुविधाजनक बनाने के लिए

Q.No: 89	Who among the following was the Chairman of the Drafting Committee of the Constituent Assembly? निम्नलिखित में से कौन संविधान सभा की प्रारूप समिति के अध्यक्ष थे?
	Sardar Vallabhbhai Patel सरदार वल्लभभाई पटेल
	Dr. B.R. Ambedkar डॉ. बी.आर. अम्बेडकर
	Dr. Rajendra Prasad डॉ. राजेंद्र प्रसाद
	Jawaharlal Nehru जवाहरलाल नेहरू

Q.No: 90	Which part of the Indian Constitution is known as the "Magna Carta of India" and guarantees fundamental rights to the citizens? भारतीय संविधान का कौन सा भाग "भारत का मैग्ना कार्टा" के रूप में जाना जाता है और नागरिकों को मौलिक अधिकारों की गारंटी देता है?
	Part I भाग I
	Part II भाग II
	Part III भाग III
	Part IV भाग IV

Q.No: 91	Which Indian sporting award is given for outstanding performance in sports coaching? खेल कोचिंग में उत्कृष्ट प्रदर्शन के लिए कौन सा भारतीय खेल पुरस्कार दिया जाता है?
	Major Dhyan Chand Khel Ratna Award मेजर ध्यानचंद खेल रत्न पुरस्कार
	Dronacharya Award द्रोणाचार्य पुरस्कार
	Rashtriya Khel Protsahan Puruskar राष्ट्रीय खेल प्रोत्साहन पुरस्कार
	Arjuna Award अर्जुन पुरस्कार

Q.No: 92	Once the Time Magazine had mocked Gandhiji's physical size but to whom do it compare his martyrdom later on? एक बार टाइम मैगजीन ने गांधीजी की शारीरिक साइज़ का मजाक उड़ाया था लेकिन बाद में उनकी शहादत की तुलना किससे की गई?
	Albert Einstein अल्बर्ट आइंस्टीन
	Martin Luther मार्टिन लूथर

George Orwell

जॉर्ज ऑरवेल

Abraham Lincoln

अब्राहम लिंकन

Q.No: 93

Consider the below statements:

1. Governor is state's constitutional head.
2. He acts solely on Council's advice.

Which of the above statements holds **true** regarding Governor's executive powers?

नीचे दिए गए कथनों पर विचार कीजिए:

1. राज्यपाल राज्य का संवैधानिक प्रमुख होता है।
 2. वह पूर्णतः परिषद की सलाह पर कार्य करता है।
- राज्यपाल की कार्यकारी शक्तियों के संबंध में उपरोक्त में से कौन सा कथन सत्य है?

Both 1 and 2

1 और 2 दोनों

Only 1

केवल 1

Only 2

केवल 2

Neither 1 nor 2

न तो 1 और न ही 2

Q.No: 94

How many players from one team are allowed on the basketball court during play?

खेल के दौरान एक टीम के कितने खिलाड़ियों को बास्केटबॉल कोर्ट पर खेलने की अनुमति है?

4

4

6

6

7

7

5

5

Q.No: 95

What is Karst topography primarily associated with?

कार्स्ट स्थलाकृति मुख्यतः किससे संबंधित है?

Groundwater action in limestone or dolomite regions

चूना पत्थर या डोलोमाइट क्षेत्रों में भूजल क्रियाकलाप

River meandering in alluvial plains

जलोढ़ मैदानों में बहती नदी

Glacial deposition in polar regions

ध्रुवीय क्षेत्रों में हिमनद निक्षेपण

Wind erosion in arid deserts

शुष्क रेगिस्तानों में वायु क्षरण

Q.No: 96

Consider the following statements regarding provincial architecture in medieval India and choose the **correct option**:

1. Bengal and Jaunpur developed distinct architectural styles separate from the Delhi Sultanate.
2. Regional styles often blended Islamic structures with local artistic traditions.
3. Provincial styles remained completely uniform across all regions of India.

मध्यकालीन भारत में प्रांतीय वास्तुकला के संबंध में निम्नलिखित कथनों पर विचार कीजिए और **सही विकल्प** चुनिए:

1. बंगाल और जौनपुर ने दिल्ली सल्तनत से अलग विशिष्ट स्थापत्य शैली विकसित की।
2. क्षेत्रीय शैलियों में अक्सर इस्लामी संरचनाओं का स्थानीय कलात्मक परंपराओं के साथ मिश्रण होता था।
3. प्रांतीय शैलियाँ भारत के सभी क्षेत्रों में पूरी तरह एक समान रहीं।

Only 1

केवल 1

1 and 2 Only

केवल 1 और 2

2 and 3 Only

केवल 2 और 3

All 1, 2, and 3 are correct

सभी 1, 2 और 3 सही हैं

Not Answered

Q.No: 97 Which analytical inference best explains why Prof. Govindarajan Padmanabhan received the Vigyan Ratna award in Biological Sciences?

कौन सा विश्लेषणात्मक अनुमान सबसे अच्छी तरह से बताता है कि प्रोफेसर गोविंदराजन पद्मनाभन को जैविक विज्ञान में विज्ञान रत्न पुरस्कार क्यों मिला?

For isolating SARS-CoV-2 protein markers

SARS-CoV-2 प्रोटीन मार्करों को अलग करने के लिए

For discovering DNA replication enzymes

डीएनए प्रतिकृति एंजाइमों की खोज के लिए

For elucidating malaria parasite metabolism and boosting biotech start-ups

मलेरिया परजीवी चयापचय को स्पष्ट करने और जैव प्रौद्योगिकी स्टार्ट-अप को बढ़ावा देने के लिए

For promoting chemical synthesis in pharma

फार्मा में रासायनिक संश्लेषण को बढ़ावा देने के लिए

Q.No: 98 Consider the following statements:

1. The Aditya-L1 mission was launched to replace the INSAT series of weather satellites.
 2. Aditya-L1 successfully entered a Halo Orbit around the Lagrange Point 1 (L1) to observe solar activity.
- Which of the statements given above is/are **correct**?

निम्नलिखित कथनों पर विचार करें:

1. आदित्य-एल 1 मिशन को मौसम उपग्रहों की इनसैट श्रृंखला को बदलने के लिए लॉन्च किया गया था।
 2. आदित्य-एल 1 ने सौर गतिविधि का निरीक्षण करने के लिए लैंग्रेंज पॉइंट 1 (एल 1) के चारों ओर एक हेलो ऑर्बिट में सफलतापूर्वक प्रवेश किया।
- ऊपर दिए गए कथनों में से कौन सा **सही** है / हैं?

2 only

2 केवल

Both 1 and 2

1 और 2 दोनों

Neither 1 nor 2

न तो 1, न ही 2

1 only

1 केवल

Q.No: 99 In 2025, ISRO announced the construction of the "Bharatiya Antariksh Station" project. What is the first module scheduled to be tested under this initiative?

इसरो ने 2025 में "भारतीय अंतरिक्ष स्टेशन" परियोजना के निर्माण की घोषणा की है। इस पहल के तहत परीक्षण के लिए निर्धारित पहला मॉड्यूल कौन सा है?

Cryogenic Fuel Storage Hub

क्रायोजेनिक ईंधन भंडारण केंद्र

Robotic Refueling Unit

रोबोटिक ईंधन भरने वाली इकाई

Autonomous AI-operated lab

स्वायत्त AI-संचालित प्रयोगशाला

Orbital Habitation Module

कक्षीय आवास मॉड्यूल

Q.No: 100 Which of the following is a key responsibility of IRDAI?

IRDAI (भारतीय बीमा नियामक और विकास प्राधिकरण) की प्रमुख जिम्मेदारियों में से एक क्या है?

Protecting the interests of insurance policyholders

बीमा धारकों के हितों की रक्षा करना

Regulating the stock market

शेयर बाजार को नियंत्रित करना

Managing disinvestment in public sector enterprises

सार्वजनिक उपक्रमों का विनिवेश प्रबंधन

Promoting foreign trade

विदेशी व्यापार को बढ़ावा देना

PART - C (English Language and Comprehension)

Q.No: 101 Select the correct passive form of the given sentence.
"She is cooking dinner."

Dinner has been cooked by her.

Dinner is being cooked by her.

Dinner was cooked by her.

Dinner is cooked by her.

Q.No: 102 Read the following passage carefully and answer the questions that follow by selecting the most appropriate option from the given alternatives.
Theme: The Dandi March
Sector: Indian History / Freedom Movement
In 1930, Mahatma Gandhi started a peaceful protest called the Dandi March. He and his followers walked 240 kilometers from Sabarmati Ashram to Dandi, a village near the sea. The purpose of the march was to protest the British law that taxed salt. Salt is a basic need for everyone, and Gandhi believed it was unfair to make people pay for it. During the march, more and more people joined him. The British government tried to stop the movement, but Gandhi remained calm and peaceful. He made salt from the sea at Dandi, breaking the law in a non-violent way. The Dandi March became a strong symbol of India's fight for freedom. It showed the world that peaceful protest could be powerful. Even today, it is remembered as a brave step in India's struggle for independence.

Who led the Dandi March?

Subhas Chandra Bose

Jawaharlal Nehru

Bhagat Singh

Mahatma Gandhi

Q.No: 103 Read the following passage carefully and answer the questions that follow by selecting the most appropriate option from the given alternatives.
Theme: The Dandi March
Sector: Indian History / Freedom Movement
In 1930, Mahatma Gandhi started a peaceful protest called the Dandi March. He and his followers walked 240 kilometers from Sabarmati Ashram to Dandi, a village near the sea. The purpose of the march was to protest the British law that taxed salt. Salt is a basic need for everyone, and Gandhi believed it was unfair to make people pay for it. During the march, more and more people joined him. The British government tried to stop the movement, but Gandhi remained calm and peaceful. He made salt from the sea at Dandi, breaking the law in a non-violent way. The Dandi March became a strong symbol of India's fight for freedom. It showed the world that peaceful protest could be powerful. Even today, it is remembered as a brave step in India's struggle for independence.

Why was the march started?

To support education

To protest salt tax

To celebrate independence

To fight a war

Q.No: 104	<p>Read the following passage carefully and answer the questions that follow by selecting the most appropriate option from the given alternatives.</p> <p>Theme: The Dandi March</p> <p>Sector: Indian History / Freedom Movement</p> <p>In 1930, Mahatma Gandhi started a peaceful protest called the Dandi March. He and his followers walked 240 kilometers from Sabarmati Ashram to Dandi, a village near the sea. The purpose of the march was to protest the British law that taxed salt. Salt is a basic need for everyone, and Gandhi believed it was unfair to make people pay for it. During the march, more and more people joined him. The British government tried to stop the movement, but Gandhi remained calm and peaceful. He made salt from the sea at Dandi, breaking the law in a non-violent way. The Dandi March became a strong symbol of India's fight for freedom. It showed the world that peaceful protest could be powerful. Even today, it is remembered as a brave step in India's struggle for independence.</p> <p>How did Gandhi break the law?</p>
	By fighting soldiers
	By leaving the country
	By making salt from the sea
	By closing schools

Q.No: 105	<p>Read the following passage carefully and answer the questions that follow by selecting the most appropriate option from the given alternatives.</p> <p>Theme: The Dandi March</p> <p>Sector: Indian History / Freedom Movement</p> <p>In 1930, Mahatma Gandhi started a peaceful protest called the Dandi March. He and his followers walked 240 kilometers from Sabarmati Ashram to Dandi, a village near the sea. The purpose of the march was to protest the British law that taxed salt. Salt is a basic need for everyone, and Gandhi believed it was unfair to make people pay for it. During the march, more and more people joined him. The British government tried to stop the movement, but Gandhi remained calm and peaceful. He made salt from the sea at Dandi, breaking the law in a non-violent way. The Dandi March became a strong symbol of India's fight for freedom. It showed the world that peaceful protest could be powerful. Even today, it is remembered as a brave step in India's struggle for independence.</p> <p>What was the distance covered in the march?</p>
	100 km
	500 km
	240 km
	50 km

Q.No: 106	<p>Read the following passage carefully and answer the questions that follow by selecting the most appropriate option from the given alternatives.</p> <p>Theme: The Dandi March</p> <p>Sector: Indian History / Freedom Movement</p> <p>In 1930, Mahatma Gandhi started a peaceful protest called the Dandi March. He and his followers walked 240 kilometers from Sabarmati Ashram to Dandi, a village near the sea. The purpose of the march was to protest the British law that taxed salt. Salt is a basic need for everyone, and Gandhi believed it was unfair to make people pay for it. During the march, more and more people joined him. The British government tried to stop the movement, but Gandhi remained calm and peaceful. He made salt from the sea at Dandi, breaking the law in a non-violent way. The Dandi March became a strong symbol of India's fight for freedom. It showed the world that peaceful protest could be powerful. Even today, it is remembered as a brave step in India's struggle for independence.</p> <p>What does the Dandi March symbolize today?</p>
	Peaceful protest and courage
	Use of violence in freedom
	Marching for exercise
	Tax collection by British

Q.No: 107	<p>Read the following passage carefully and answer the questions that follow by selecting the most appropriate option from the given alternatives.</p> <p>As algorithms increasingly curate our digital experiences—what we read, watch, buy, or even whom we date—they quietly shape our perception of the world. This phenomenon, known as "algorithmic living," promises efficiency but risks eroding autonomy. When choices are filtered through predictive systems, personal agency may weaken, and individuals might mistake convenience for control. Moreover, algorithmic personalization often traps users in feedback loops, reinforcing existing preferences and limiting exposure to diverse perspectives. Over time, this can lead to cognitive narrowing, where users become less open to alternative views or new ideas. While algorithms are not inherently harmful, their unchecked influence raises ethical concerns about manipulation and passive consumption. True digital well-being demands critical awareness—not of the machine, but of how we engage with it. In a world increasingly optimized for us, the question is not what the algorithm shows, but whether we are still choosing to look beyond it.</p> <p>What is the main concern of "algorithmic living"?</p>
	Faster online shopping
	Decline in physical activity
	Loss of autonomy due to filtered choices
	Increased cost of internet

Q.No: 108	<p>Read the following passage carefully and answer the questions that follow by selecting the most appropriate option from the given alternatives.</p> <p>As algorithms increasingly curate our digital experiences—what we read, watch, buy, or even whom we date—they quietly shape our perception of the world. This phenomenon, known as "algorithmic living," promises efficiency but risks eroding autonomy. When choices are filtered through predictive systems, personal agency may weaken, and individuals might mistake convenience for control. Moreover, algorithmic personalization often traps users in feedback loops, reinforcing existing preferences and limiting exposure to diverse perspectives. Over time, this can lead to cognitive narrowing, where users become less open to alternative views or new ideas. While algorithms are not inherently harmful, their unchecked influence raises ethical concerns about manipulation and passive consumption. True digital well-being demands critical awareness—not of the machine, but of how we engage with it. In a world increasingly optimized for us, the question is not what the algorithm shows, but whether we are still choosing to look beyond it.</p> <p>What does the term "feedback loop" imply in the passage?</p>
	Randomized search results
	Repeated exposure to similar content
	Feedback from social media users
	Technological malfunctions

Q.No: 109	<p>Read the following passage carefully and answer the questions that follow by selecting the most appropriate option from the given alternatives.</p> <p>As algorithms increasingly curate our digital experiences—what we read, watch, buy, or even whom we date—they quietly shape our perception of the world. This phenomenon, known as "algorithmic living," promises efficiency but risks eroding autonomy. When choices are filtered through predictive systems, personal agency may weaken, and individuals might mistake convenience for control. Moreover, algorithmic personalization often traps users in feedback loops, reinforcing existing preferences and limiting exposure to diverse perspectives. Over time, this can lead to cognitive narrowing, where users become less open to alternative views or new ideas. While algorithms are not inherently harmful, their unchecked influence raises ethical concerns about manipulation and passive consumption. True digital well-being demands critical awareness—not of the machine, but of how we engage with it. In a world increasingly optimized for us, the question is not what the algorithm shows, but whether we are still choosing to look beyond it.</p> <p>How does algorithmic living affect thinking over time?</p>
	It enhances creative thinking
	It encourages scientific research
	It narrows perspective and reduces openness
	It develops emotional intelligence

Q.No: 110	<p>Read the following passage carefully and answer the questions that follow by selecting the most appropriate option from the given alternatives.</p> <p>As algorithms increasingly curate our digital experiences—what we read, watch, buy, or even whom we date—they quietly shape our perception of the world. This phenomenon, known as "algorithmic living," promises efficiency but risks eroding autonomy. When choices are filtered through predictive systems, personal agency may weaken, and individuals might mistake convenience for control. Moreover, algorithmic personalization often traps users in feedback loops, reinforcing existing preferences and limiting exposure to diverse perspectives. Over time, this can lead to cognitive narrowing, where users become less open to alternative views or new ideas. While algorithms are not inherently harmful, their unchecked influence raises ethical concerns about manipulation and passive consumption. True digital well-being demands critical awareness—not of the machine, but of how we engage with it. In a world increasingly optimized for us, the question is not what the algorithm shows, but whether we are still choosing to look beyond it.</p> <p>What is suggested as a way to maintain digital well-being?</p>
	Ignore all online content
	Follow only algorithmic suggestions
	Practice critical engagement
	Increase screen time

Q.No: 111	<p>Read the following passage carefully and answer the questions that follow by selecting the most appropriate option from the given alternatives.</p> <p>As algorithms increasingly curate our digital experiences—what we read, watch, buy, or even whom we date—they quietly shape our perception of the world. This phenomenon, known as "algorithmic living," promises efficiency but risks eroding autonomy. When choices are filtered through predictive systems, personal agency may weaken, and individuals might mistake convenience for control. Moreover, algorithmic personalization often traps users in feedback loops, reinforcing existing preferences and limiting exposure to diverse perspectives. Over time, this can lead to cognitive narrowing, where users become less open to alternative views or new ideas. While algorithms are not inherently harmful, their unchecked influence raises ethical concerns about manipulation and passive consumption. True digital well-being demands critical awareness—not of the machine, but of how we engage with it. In a world increasingly optimized for us, the question is not what the algorithm shows, but whether we are still choosing to look beyond it.</p> <p>What is the tone of the passage?</p>
	Casual and humorous
	Cautious and reflective
	Dismissive and skeptical
	Optimistic and enthusiastic

Q.No: 112	<p>In the following passage, some words have been omitted. Read the passage carefully and choose the most appropriate option from the given alternatives to fill in each blank. Mark your answer for each question.</p> <p>For high school students, the final years before graduation are often filled with pressure from all directions. While teachers and parents focus on marks and entrance exams, many students also face pressure from friends to fit in or appear "cool." This creates a constant struggle between staying focused on studies and maintaining social (1)_____. The fear of missing out on group activities or being judged can distract even the most serious learners. Over time, this pressure builds up and may lead to (2)_____ stress. Some students feel torn between expectations and personal goals, unsure of what truly matters. Experts say the key is to set clear priorities and learn to say (3)_____ when needed. Building confidence and developing time-management skills can help students find balance. In the end, choosing self-growth over temporary approval brings long-term (4)_____. True friends will never ask you to (5)_____ your dreams just to fit in.</p> <p>(1)</p>
	skills
	media
	image
	circle

Q.No: 113	<p>In the following passage, some words have been omitted. Read the passage carefully and choose the most appropriate option from the given alternatives to fill in each blank. Mark your answer for each question.</p> <p>For high school students, the final years before graduation are often filled with pressure from all directions. While teachers and parents focus on marks and entrance exams, many students also face pressure from friends to fit in or appear "cool." This creates a constant struggle between staying focused on studies and maintaining social (1)_____. The fear of missing out on group activities or being judged can distract even the most serious learners. Over time, this pressure builds up and may lead to (2)_____ stress. Some students feel torn between expectations and personal goals, unsure of what truly matters. Experts say the key is to set clear priorities and learn to say (3)_____ when needed. Building confidence and developing time-management skills can help students find balance. In the end, choosing self-growth over temporary approval brings long-term (4)_____. True friends will never ask you to (5)_____ your dreams just to fit in.</p> <p>(2)</p>
	unnecessary
	mild
	academic
	emotional

Q.No: 114	<p>In the following passage, some words have been omitted. Read the passage carefully and choose the most appropriate option from the given alternatives to fill in each blank. Mark your answer for each question.</p> <p>For high school students, the final years before graduation are often filled with pressure from all directions. While teachers and parents focus on marks and entrance exams, many students also face pressure from friends to fit in or appear "cool." This creates a constant struggle between staying focused on studies and maintaining social (1)_____. The fear of missing out on group activities or being judged can distract even the most serious learners. Over time, this pressure builds up and may lead to (2)_____ stress. Some students feel torn between expectations and personal goals, unsure of what truly matters. Experts say the key is to set clear priorities and learn to say (3)_____ when needed. Building confidence and developing time-management skills can help students find balance. In the end, choosing self-growth over temporary approval brings long-term (4)_____. True friends will never ask you to (5)_____ your dreams just to fit in.</p> <p>(3)</p>
	no
	later
	sorry
	yes

Q.No: 115	<p>In the following passage, some words have been omitted. Read the passage carefully and choose the most appropriate option from the given alternatives to fill in each blank. Mark your answer for each question.</p> <p>For high school students, the final years before graduation are often filled with pressure from all directions. While teachers and parents focus on marks and entrance exams, many students also face pressure from friends to fit in or appear "cool." This creates a constant struggle between staying focused on studies and maintaining social (1)_____. The fear of missing out on group activities or being judged can distract even the most serious learners. Over time, this pressure builds up and may lead to (2)_____ stress. Some students feel torn between expectations and personal goals, unsure of what truly matters. Experts say the key is to set clear priorities and learn to say (3)_____ when needed. Building confidence and developing time-management skills can help students find balance. In the end, choosing self-growth over temporary approval brings long-term (4)_____. True friends will never ask you to (5)_____ your dreams just to fit in.</p> <p>(4)</p>
	struggle
	regret
	respect
	benefit

Q.No: 116	<p>In the following passage, some words have been omitted. Read the passage carefully and choose the most appropriate option from the given alternatives to fill in each blank. Mark your answer for each question.</p> <p>For high school students, the final years before graduation are often filled with pressure from all directions. While teachers and parents focus on marks and entrance exams, many students also face pressure from friends to fit in or appear "cool." This creates a constant struggle between staying focused on studies and maintaining social (1)_____. The fear of missing out on group activities or being judged can distract even the most serious learners. Over time, this pressure builds up and may lead to (2)_____ stress. Some students feel torn between expectations and personal goals, unsure of what truly matters. Experts say the key is to set clear priorities and learn to say (3)_____ when needed. Building confidence and developing time-management skills can help students find balance. In the end, choosing self-growth over temporary approval brings long-term (4)_____. True friends will never ask you to (5)_____ your dreams just to fit in.</p> <p>(5)</p>
share	
delay	
sacrifice	
chase	

Q.No: 117	Find the misspelt word.
Garrulous	
grateful	
guarantee	
Garrulous	

Q.No: 118	<p>Select the correct passive form of the given sentence.</p> <p>"The principal might be watching the surveillance footage."</p>
The surveillance footage is being watched.	
The surveillance footage might watched.	
The surveillance footage might be watched.	
The surveillance footage might be being watched by the principal.	

Q.No: 119	<p>Select the most appropriate homonym.</p> <p>They had a heated row last night.</p>
Argument	
Line	
Boat	
Series	

Q.No: 120	<p>Select the correct active form of the given sentence.</p> <p>"The homework is being checked by the teacher."</p>
The teacher is checking the homework.	
The teacher was checking the homework.	
The teacher checks the homework.	
The teacher has checked the homework.	

Q.No: 121	Find the incorrect part of the sentence: I have visited Agra last month.
I have visited	
No error	
last month	
Agra	

Q.No: 122	Choose the antonym of 'candid':
Deceitful	
Blunt	
Honest	
Frank	

Q.No: 123	Arrange the sentence parts: (A) the painter (B) has completed (C) the mural (D) beautifully
ABCD	
ABDC	
ACBD	
BACD	

Q.No: 124	Select the most appropriate option to fill in the blank. The teacher was angry ____ the students.
with	
to	
by	
on	

Q.No: 125	In the following question, the first and the last parts of the sentence/passage are numbered 1 and 6. The rest of the sentence/passage is split into four parts — P, Q, R, and S. These four parts are not given in their proper order. Read the sentence/passage and find the most logical order of the parts between 1 and 6. Time management helps improve productivity. P: Procrastination leads to wasted hours. Q: Creating a schedule prevents delays. R: It gives direction and reduces stress. S: Staying disciplined is the key. 6. Success often depends on how we manage time.
PQSR	
SRPQ	
RQPS	
QPRS	

Q.No: 126	Select the most appropriate option to improve the bold part of the sentence. He behaves as if he knows everything .
known everything	
knew everything	

has known everything

have known all

Q.No: 127 Select the option that expresses the given sentence in Direct to Indirect Speech.
They said, "We are watching a movie."

They said that they had watched a movie.

They said that they were watching a movie.

They said that they watched a movie.

They said that they are watching a movie.

Q.No: 128 Select the most appropriate option to fill in the blank.
She ___ watching that movie already.

had

having

has

have

Q.No: 129 Choose the correct direct speech form of the following sentence.

Sobhit said that he could speak more fluently than Rahul.

Sobhit said, "I can speak most fluently than Rahul."

Sobhit said, "I can speak more fluentlier than Rahul."

Sobhit said, "I can speak more fluently than Rahul."

Sobhit said, "I can spoke more fluently than Rahul."

Q.No: 130 The idiom 'Token strike' implies:

No protest

Warning strike

Heavy protest

Silent protest

Q.No: 131 What does the idiom 'Bury the hatchet' mean?

Fight again

Hide weapons

Ignore a problem

Make peace

Q.No: 132 Choose the correct sequence to form a meaningful sentence:
(A) playing (B) children (C) were (D) in the park

CBAD
BDCA
BACD
BACD

Q.No: 133	Select the synonym of Recalcitrant .
Loyal	
Disobedient	
Submissive	
Supportive	

Q.No: 134	In the following question, the first and the last parts of the sentence/passage are numbered 1 and 6. The rest of the sentence/passage is split into four parts — P, Q, R, and S. These four parts are not given in their proper order. Read the sentence/passage and find the most logical order of the parts between 1 and 6. Mathematics is essential in daily life. P: Calculating discounts helps in shopping. Q: Managing time also involves math skills. R: From money to measurements, it is everywhere. S: Even cooking depends on ratios and quantities. 6. So, learning math has practical value.
QRSP	
PRSQ	
RPSQ	
RPQS	

Q.No: 135	In the following question, the first and the last parts of the sentence/passage are numbered 1 and 6. The rest of the sentence/passage is split into four parts — P, Q, R, and S. These four parts are not given in their proper order. Read the sentence/passage and find the most logical order of the parts between 1 and 6. It started raining in the evening. P: People ran to shelters. Q: Water collected on roads. R: Traffic moved slowly. S: Many opened their umbrellas. 6. It was a heavy shower.
SRPQ	
QPRS	
PQRS	
PSRQ	

Q.No: 136	Choose the part of the sentence that contains an error: She does not know to swim.
She does not	
know to swim	
swim	
No error	

Q.No: 137	Choose the best one-word substitute for: "An inscription written on stone in the memory of a deceased person."
Epigraph	

Epitaph
Memoir
Autograph

Q.No: 138	Choose the correct option that replaces the underline word/phrase in the following sentence: Sujata <u>put in</u> the best dress for the party.
put off	
put across	
put on	
put out	

Q.No: 139	What does the idiom 'Get to the point' mean?
Speak directly	
Interrupt	
Avoid the matter	
Speak indirectly	

Q.No: 140	Select the most appropriate option to improve the bold part of the sentence. She did her work very good .
very well	
too well	
quite good	
really great	

Q.No: 141	Select the most appropriate homonym. The guards will watch over the premises.
Timepiece	
Protect	
Warn	
Observe	

Q.No: 142	Choose the correct indirect speech form of the following sentence. Mohan told Radha, "I have seen you many times in the market since last year."
Mohan told Radha that he had seen her many times in the market since last year.	
Mohan told Radha that he had seen her many times in the market since the following year.	
Mohan told Radha that he had seen her many times in the market since the previous year.	
Mohan told Radha that she had seen him many times in the market since the previous year.	

Q.No: 143	Arrange the sentence parts: (A) in his bag (B) kept (C) the documents (D) he
DCBA	
DBCA	
DABC	
BACD	

Q.No: 144	Select the correct passive form of the given sentence. "The committee had rejected the proposal."
The proposal had been rejected by the committee.	
The proposal was rejecting.	
The proposal was rejected by the committee.	
The proposal is rejected.	

Q.No: 145	Choose the correctly spelt word:
Magnanemous	
Magnanimus	
Magnanamous	
Magnanimous	

Q.No: 146	Choose the correct direct speech form of the following sentence. Ravi requested his friend to turn the music down.
Ravi said, "Will you please turn the music down?"	
Ravi said to his friend, "Are you going to turn the music down?"	
Ravi said to his friend, "I request you to turn the music down."	
Ravi said to his friend, "Please turn the music down."	

Q.No: 147	Select the correct active form. "Was the culprit being chased by the police?"
Had the police chased the culprit?	
Did the police chase the culprit?	
Was the police chasing the culprit?	
Is the police chasing the culprit?	

Q.No: 148	Choose the correct option to complete the sentence. Due to the accident, she had a deep _____ on her arm.
wind	
wounded	

wand

wound

Q.No: 149 Choose the one which can be substituted for the given sentence.
A person without a settled home

Noble

Native

Vagabond

Tenant

Q.No: 150 What does the idiom 'Jack up the rates' mean?

Increase prices

Drop prices

Stay unchanged

Sell everything

Q.No: 151 Select the most appropriate option to improve the bold part of the sentence.
She was **not enough tall** to play basketball.

too short

not tall

very short

not tall enough

Q.No: 152 Select the most appropriate option to fill in the blank.
She was brought ____ by her grandmother.

out

off

up

in

Q.No: 153 Select the most appropriate option to fill in the blank.
The sun rises ____ the east.

by

at

on

in

Q.No: 154 Select the most appropriate option to improve the bold part of the sentence.
She succeeded **by virtue of** her talent.

owing of

because

cause of

due to

Q.No: 155 Choose the antonym of 'diligent':

Meticulous

Efficient

Lazy

Hardworking

Q.No: 156 Select the synonym of Insolent.

Disrespectful

Gentle

Polite

Courteous

Q.No: 157 Select the most appropriate option to improve the bold part of the sentence.
She has **did** her homework already.

made homework

done her homework

made her homework

doing her homework

Q.No: 158 Select the option that expresses the given sentence in Direct to Indirect Speech.
She said, "Who knows the answer?"

She told who knows the answer.

She asked who knows the answer.

She said who is knowing the answer.

She asked who knew the answer.

Q.No: 159 Choose the correct option to complete the sentence.

She contracted a cold and had problems with stuffy _____.

knows

news

nose

noose

Q.No: 160 Select the most appropriate option to improve the bold part of the sentence.
We **enjoyed during the party** last night.

have enjoyed in party

enjoyed ourselves at the party

had enjoyment during party

enjoyed in the party

Q.No: 161 Select the option that expresses the given sentence in Direct Speech.
They said that they were supposed to arrive earlier.

They said, "We should arrive earlier."

They said, "We were supposed to arrive earlier."

They said, "We have to arrive earlier."

They said, "We are supposed to arrive earlier."

Q.No: 162 Find the incorrect part of the sentence:
She is better in mathematics than English.



No error

She is

better in mathematics

Q.No: 163 In the following question, the first and the last parts of the sentence/passage are numbered 1 and 6. The rest of the sentence/passage is split into four parts — P, Q, R, and S. These four parts are not given in their proper order. Read the sentence/passage and find the most logical order of the parts between 1 and 6.

Artificial Intelligence is transforming global industries. P: However, ethical concerns about its use persist. Q: It improves efficiency in sectors like healthcare and finance. R: There is fear of job loss due to automation. S: Policymakers are debating how to regulate its growth. 6. A balanced approach is needed to harness AI's potential.

QPRS

QSRP

QRSP

RPQS

Q.No: 164 Choose the correct spelling for a word meaning 'not important'.

Triveal

irrvia

Triveel

Triviel

Q.No: 165 Choose the antonym of 'withdraw':

Remove

Advance

Recede

Deduct

Q.No: 166 Choose the part of the sentence that contains an error:
I prefer tea than coffee.

coffee

No error

I prefer

tea than

Q.No: 167 Select the most appropriate option to fill in the blank.
He insisted ____ paying the bill.

at

on

by

for

Q.No: 168 Select the most appropriate option to improve the bold part of the sentence.
You must **refrain to smoke**.

quit from smoke

stop to smoke

stop of smoking

refrain from smoking

Q.No: 169 Identify the incorrect spelling.

Malfeasance

Magnanimous

Insatiable

Perserverance

Q.No: 170 Which word is closest in meaning to 'Castigate'?

Vague

Dull

Dark

Condemn

Q.No: 171 Select the correct active form.
"This error could have been avoided by careful planning."

This error could be avoided by careful planning.

Someone could have avoided this error.

This error could not have been made.

Careful planning could have avoided this error.

Q.No: 172 Identify the part containing a grammatical or structural error:
The news are too good to be true.

No error

are too good

The news

to be true

Q.No: 173 What does the idiom 'Speak your mind' mean?

Express frankly

Stay silent

Lie

Gossip

Q.No: 174 Choose the one which can be substituted for the given sentence.
An imaginary ideal place of perfection

Monarchy

Utopia

Fable

Dystopia

Q.No: 175 Select the synonym of **Amiable**.

Friendly

Rude

Hostile

Cold

Q.No: 176 Select the most appropriate option to fill in the blank.
The workers agitated ____ better working conditions.

at

by

for

to

Q.No: 177 Find the incorrect part of the sentence:
The sceneries of Ooty were wonderful.

of Ooty

The sceneries

No error

were wonderful

Q.No: 178 Select the most appropriate option to fill in the blank.
They prefer tea ___ coffee.

over

than

to

from

Q.No: 179 In the following question, the first and the last parts of the sentence/passage are numbered 1 and 6. The rest of the sentence/passage is split into four parts – P, Q, R, and S. These four parts are not given in their proper order. Read the sentence/passage and find the most logical order of the parts between 1 and 6.

Climate change remains one of the biggest challenges of our time. P. Shifting rainfall patterns are already affecting agriculture. Q. Melting glaciers are disrupting water supplies in many regions. R. Its impacts are visible across the globe. S. Rising sea levels threaten low-lying coastal areas. 6. Urgent global collaboration is essential to tackle it.

PRSQ

RPOS

RQPS

QSPR

Q.No: 180 Rearrange the parts of this sentence:
(A) several measures (B) have been introduced (C) by the government (D) to control inflation

CBAD

ACBD

BCAD

BACD

Q.No: 181 Choose the correct indirect speech form of the following sentence.

He said, "Where are you going at this time of the day?"

He asked me where I was going at this time of the day.

He asked me where I was going at that time of the day.

He asked me where was I going at this time of the day.

He asked me where was I going at that time of the day.

Q.No: 182 Change the voice of the following sentence.

The satellite has been launched successfully by ISRO.

ISRO have launched the satellite successfully.

ISRO has launched the satellite successfully.

ISRO has launch the satellite successfully.

ISRO has launched the satellite successful.

Q.No: 183 Choose the one which can be substituted for the given sentence.
A person who is extremely selective or difficult to please

Docile

Hostile

Fastidious

Gullible

Q.No: 184 Select the synonym of **Esoteric**.

Common

Mysterious

Popular

Clear

Q.No: 185 Select the option that expresses the given sentence in Direct to Indirect Speech.
She said, "How I wish I could meet him once!"

She hoped she would meet him.

She exclaimed that she could meet him once.

She said that she wished she could meet him once.

She asked that she meet him once.

Q.No: 186 Choose the correct active voice form of the sentence:
"All the books had been neatly arranged on the shelves by my grandfather."

My grand father has neatly arranged all the books on the shelves.

My grand father had arranged all the books on the shelves.

My grand father have neatly arranged all the books on the shelves.

My grand father had neatly arranged all the books on the shelves.

Q.No: 187 Select the option that expresses the given sentence in Direct to Indirect Speech.
He said, "I must reach early."

He said that he should reach early.

He said that he must reach early.

He said that he will reach early.

He said that he had to reach early.

Q.No: 188 Choose the one which can be substituted for the given sentence.
A person who has long experience in a field

Veteran

Novice

Trainee
Amateur

Q.No: 189	Choose the part of the sentence that contains an error: She resembles with her mother.
mother	
with her mother	
She resembles	
No error	

Q.No: 190	Select the most appropriate option to improve the bold part of the sentence. The criminal was accused for theft .
of theft	
on theft	
about theft	
with theft	

Q.No: 191	Identify the part containing a grammatical or structural error: He asked me that where I was going.
I was going	
He asked me	
No error	
that where	

Q.No: 192	Find the incorrect part of the sentence: She married with a doctor.
with a doctor	
with	
She married	
No error	

Q.No: 193	Select the most appropriate option to fill in the blank. The child has been missing ____ yesterday.
on	
from	
since	
for	

Q.No: 194	Change the following sentence into active voice: The bill was passed in the parliament.
The members of the parliament passed the bill in the parliament.	

The parliament passed the bill.

The bill has passed in the parliament.

They have passed the bill in the parliament.

Q.No: 195 Pick the antonym of 'Knave'.

Shady

Fuzzy

Dark

Paragon

Q.No: 196 Choose the one which can be substituted for the given sentence.
A short stay at a place

Odyssey

Peregrination

Sojourn

Exodus

Q.No: 197 Choose the correct option to complete the sentence.

The hospital staff ensured proper _____ conditions in every ward.

sanity

sanitarium

sanitary

sanitary

Q.No: 198 Select the most appropriate option to improve the bold part of the sentence.
I **have visited** Delhi last year.

had visited

visited

was visiting

did visit

Q.No: 199 Choose the antonym of 'audacity':

Boldness

Cowardice

Bravery

Modesty

Q.No: 200 Choose the antonym of 'durable':

Strong

Sturdy

Firm

Fragile

KD Job Updates



SSC ONLINE EXAMINATION

CANDIDATE RESPONSE SHEET/GRIEVANCE SYSTEM

[View Your Responses](#)
[Click Here Grievance About Question](#)
[Click Here View Grievance Questions](#)

Admin loggedin.[[Logout](#)]

Exam Name : Steno Grade C and D ▾

Test Date : 08 Aug 2025

Test Time : 05:30 PM

Centre : UKDEH070_PESTLE WEED COLLEGE OF INFORMATION TECHNOLOGY_360107

Correct Option selected Wrong Option selected Correct Option Not Answered

PART - A (General Intelligence & Reasoning).

Q.No: 1

Criteria to be selected as Senior Analyst – Risk and Compliance(as on 01-04-2024):
 Must have a Postgraduate degree in Finance, Economics, or Risk Management with minimum 70% marks.
 Should have work experience of 5–8 years, out of which minimum 3 years must be in risk/compliance domain.
 Age must be between 30 and 40 years.
 Must have cleared at least one international certification such as CFA, FRM, or CAMS.

Special Clause:
 If the candidate has only 60–69% marks in PG, but holds 2 certifications (from CFA, FRM, CAMS), and more than 7 years of experience, refer to Director of Risk Oversight.
 If the candidate is underage by less than 6 months, refer to CEO's desk.

Case:
 Rajat holds a PG in Economics with 67%, has 7.5 years of experience (including 3.5 years in compliance), and holds CFA and FRM certifications. He is 29 years and 7 months old as of 01-04-2024.

Question: What should be done in Rajat's case?

वरिष्ठ विश्लेषक - जोखिम एवं अनुपालन (01-04-2024 तक) के रूप में चयन हेतु मानदंड:
 वित्त, अर्थशास्त्र या जोखिम प्रबंधन में न्यूनतम 70% अंकों के साथ स्नातकोत्तर उपाधि होनी चाहिए।
 5-8 वर्षों का कार्य अनुभव होना चाहिए, जिसमें से कम से कम 3 वर्ष जोखिम/अनुपालन क्षेत्र में होने चाहिए।
 आयु 30 से 40 वर्ष के बीच होनी चाहिए।
 सीएफए, एफआरएम, या सीएएमएस जैसे कम से कम एक अंतर्राष्ट्रीय प्रमाणन उत्तीर्ण होना चाहिए।

विशेष खंड:
 यदि उम्मीदवार के पीजी में केवल 60-69% अंक हैं, लेकिन उसके पास 2 प्रमाणन (सीएफए, एफआरएम, सीएएमएस से) और 7 वर्ष से अधिक का अनुभव है, तो जोखिम निरीक्षण निदेशक से संपर्क करें।
 यदि उम्मीदवार 6 महीने से कम उम्र का है, तो सीईओ के डेस्क से संपर्क करें।

मामला:
 रजत के पास अर्थशास्त्र में 67% अंकों के साथ स्नातकोत्तर की डिग्री है, 7.5 वर्षों का अनुभव (अनुपालन में 3.5 वर्ष सहित), और CFA तथा FRM प्रमाणपत्र हैं।
 01-04-2024 तक उसकी आयु 29 वर्ष और 7 महीने है।

प्रश्न: रजत के मामले में क्या किया जाना चाहिए?

Refer to Director of Risk Oversight

जोखिम निरीक्षण निदेशक से संपर्क करें

Refer to CEO's desk

सीईओ के डेस्क का संदर्भ लें

Reject the candidate

उम्मीदवार को अस्वीकार करें

Select the candidate

उम्मीदवार का चयन करें

Q.No: 2

A bag has 4 fair coins (1 head 1 tail) and 4 double-headed coins. A coin is drawn and flipped 3 times all heads. Probability it's double-headed?

एक थैले में 4 निष्पक्ष सिक्के (1 चित 1 पट) और 4 दोमुँहे सिक्के हैं। एक सिक्का निकाला जाता है और उसे तीन बार उछाला जाता है, सभी पर चित आता है। क्या संभावना है कि वह दोमुँहा हो?

4
5
4
5

8
9
8
2
3
2
3
3
4
3
4
Not Answered

Q.No: 3	If $5■ = 20$ and $7■ = 28$, then $9■ = ?$ अगर $5■ = 20$ और $7■ = 28$, तो $9■ = ?$
42	
42	
38	
38	
36	
36	
40	
40	

Q.No: 4

Which two signs and two numbers should be interchanged in the equation given below to make the following equation correct?
 $10+4-5\times 2=19$
नीचे दिए गए समीकरण को सही बनाने के लिए किन दो चिह्नों और दो संख्याओं को आपस में बदलना चाहिए?
 $10+4-5\times 2=19$

Signs \times and $-$, Numbers 5 and 4
चिह्न \times और $-$, संख्याएँ 5 और 4

Signs $-$ and $+$, Numbers 10 and 5
चिह्न $-$ और $+$, संख्याएँ 10 और 5

Signs \times and $+$, Numbers 2 and 4
चिह्न \times और $+$, संख्याएँ 2 और 4

Signs $+$ and $-$, Numbers 10 and 2
चिह्न $+$ और $-$, संख्याएँ 10 और 2

Q.No: 5	Find the ODD one out. Blue, Green, Red, Smooth इनमें से विषम को पहचानें। नीला, हरा, लाल, चिकना
	Smooth
	चिकना
	Red
	लाल
	Green
	हरा
	Blue
	नीला

Q.No: 6	<p>If + means \times, \div means $-$, $-$ means \div then, and \times means $+$ then, what is $150 \times 25 - 5 \div 10 + 2$?</p> <p>यदि + का अर्थ \times है, \div का अर्थ $-$ है, $-$ का अर्थ \div है, और \times का अर्थ $+$ है, तो $150 \times 25 - 5 \div 10 + 2$ क्या है?</p>
130	
130	

125
125
135
135
140
140

Q.No: 7

In each of the following questions, two numbers are given which follow a certain logical or arithmetic relationship. Identify the same pattern and apply it to find the missing number in the second pair. Choose the correct option from the given alternatives.

21463 : 43685 :: 38521 : ?

निम्नलिखित प्रत्येक प्रश्न में दो संख्याएँ दी गई हैं जो एक निश्चित तार्किक या अंकगणितीय संबंध का पालन करती हैं। उसी पैटर्न को पहचानिए और दूसरे जोड़े में लुप्त संख्या ज्ञात करने के लिए उसका प्रयोग कीजिए। दिए गए विकल्पों में से सही विकल्प चुनिए।

21463 : 43685 :: 38521 : ?

50643

50643

67890

67890

60753

60753

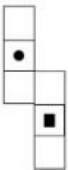
60743

60743

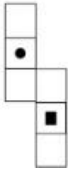
Not Answered

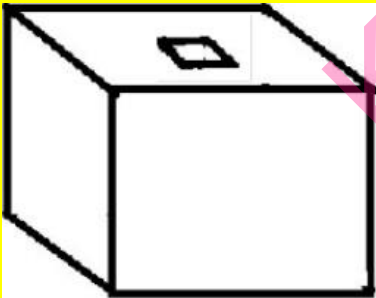
Q.No: 8

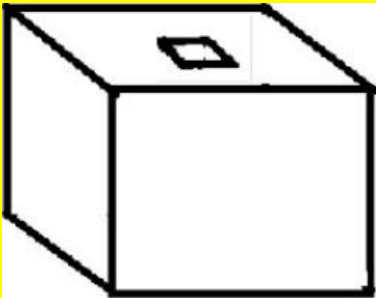
Select from the alternatives, the box that can be formed by folding the sheet as shown in figure.

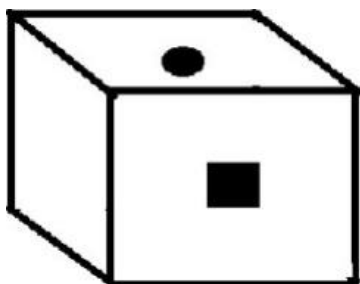
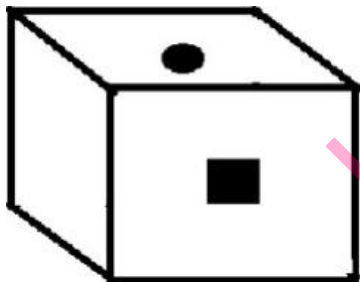
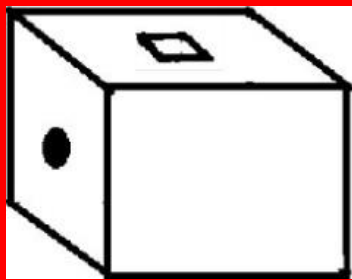
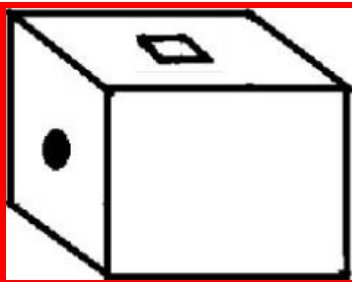
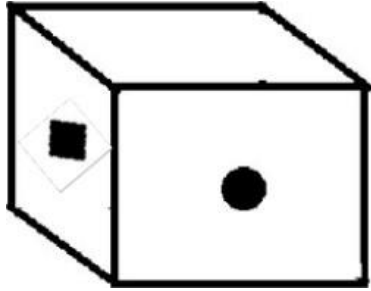
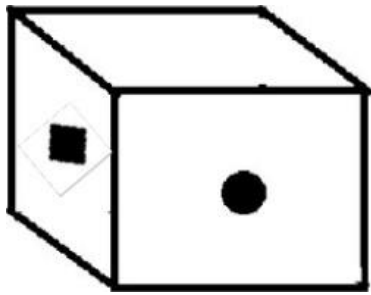


विकल्पों में से उस बॉक्स का चयन करें जो चित्र में दिखाए अनुसार शीट को मोड़कर बनाया जा सकता है।





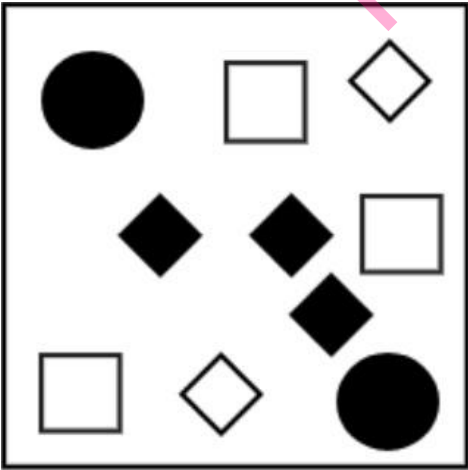
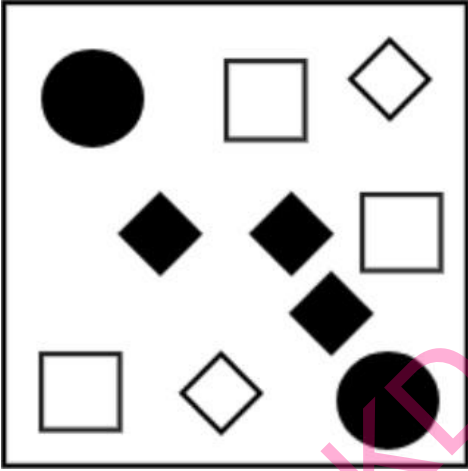
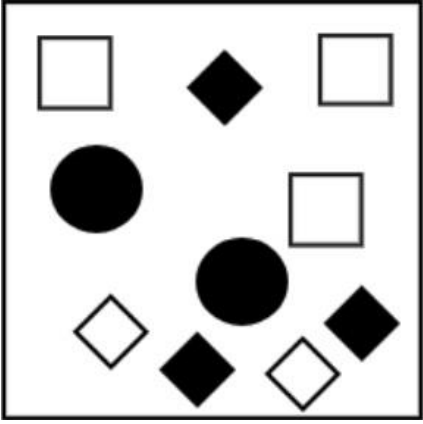
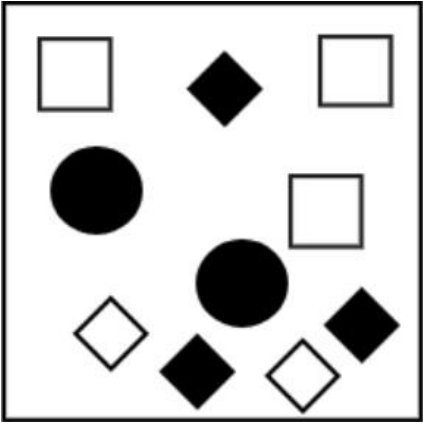






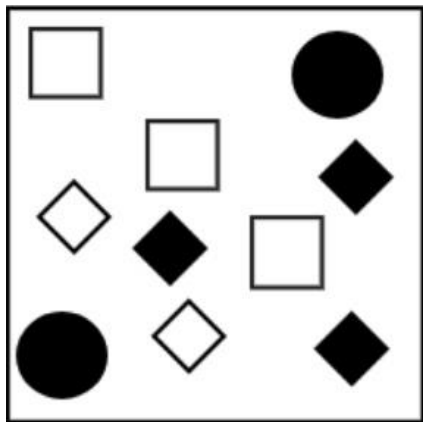
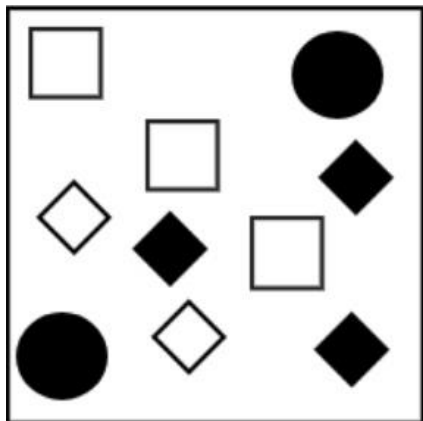
Q.No: 9

Choose the figure which is different from the rest?

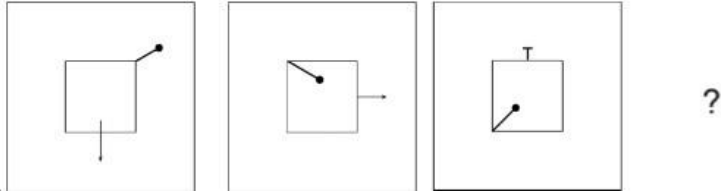
वह आकृति चुनें जो बाकी से अलग है?



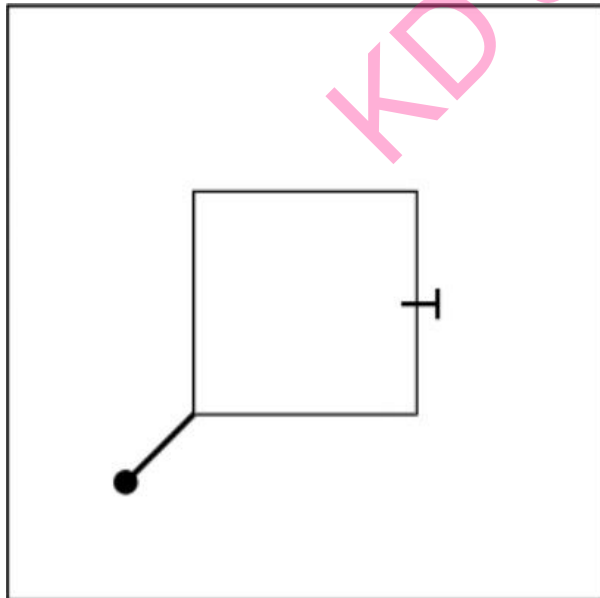
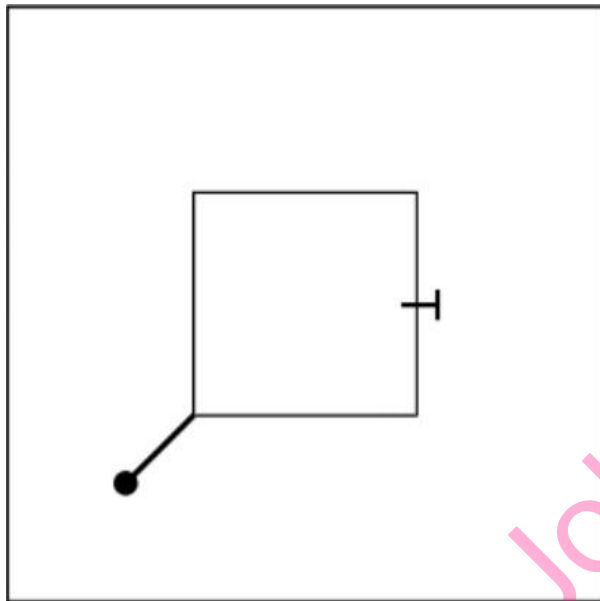
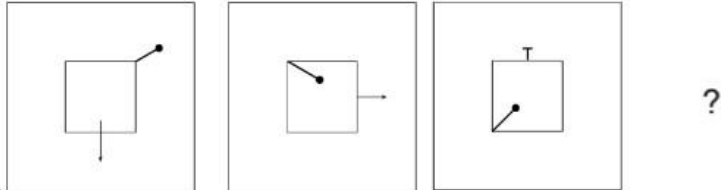
Job Updates

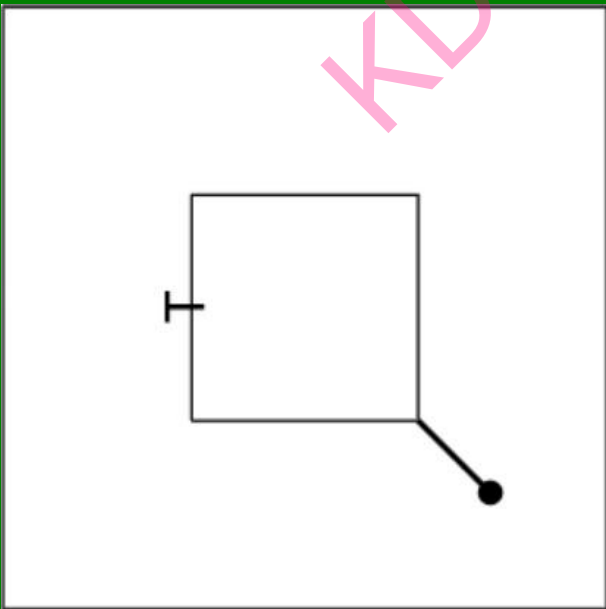
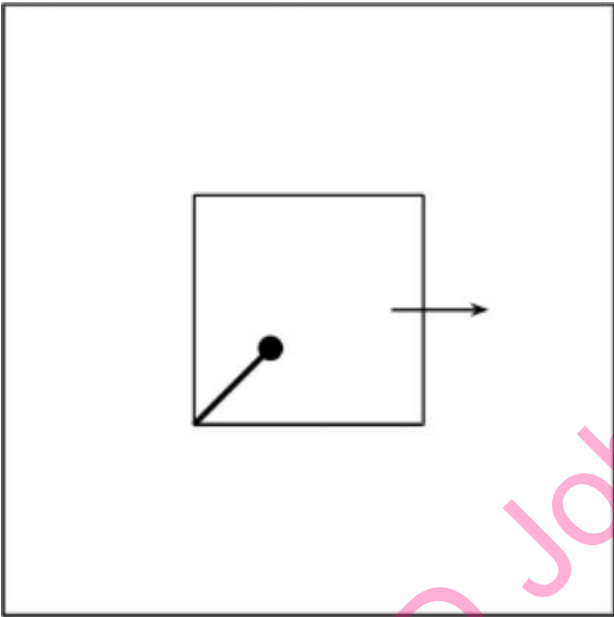
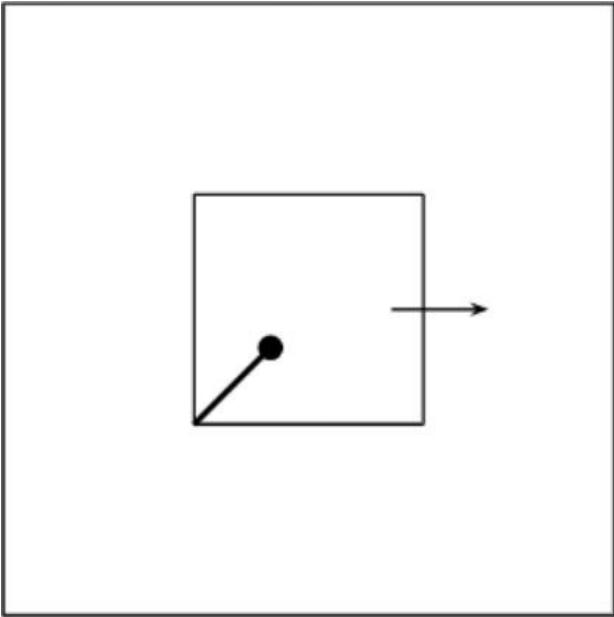


Q.No: 10 Figure A and B are related in a particular manner. Establish the same relationship between figures C and D by choosing the figure amongst these four options which would replace the question mark in figure D .

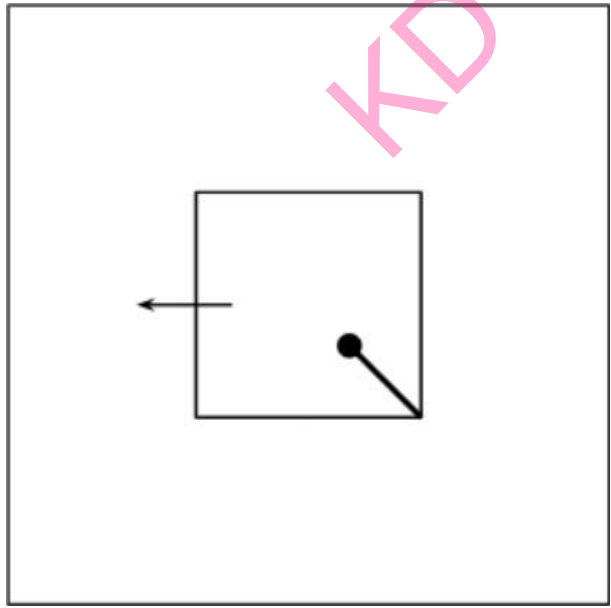
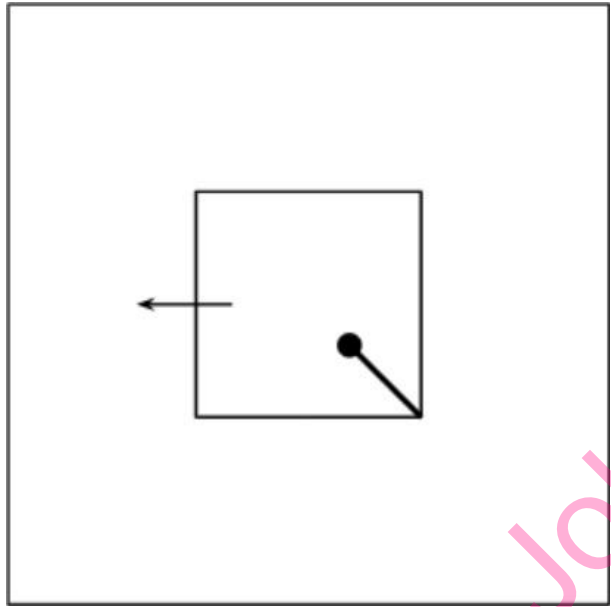
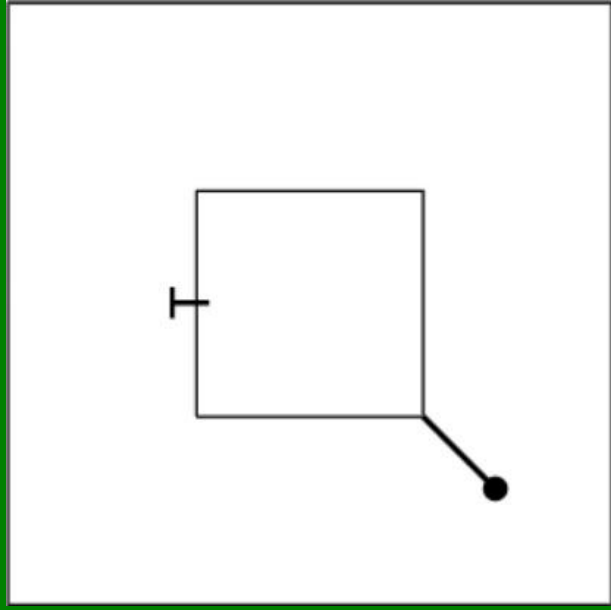


आकृति A और B एक विशेष तरीके से संबंधित हैं। इन चार विकल्पों में से वह आकृति चुनकर आकृति C और D के बीच समान संबंध स्थापित कीजिए जो आकृति D में प्रश्नवाचक चिह्न के स्थान पर आएगी।



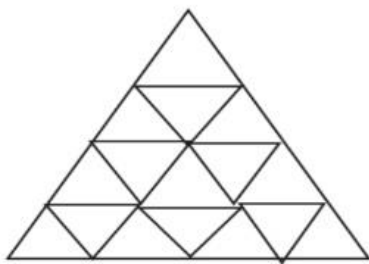


KD Job Updates

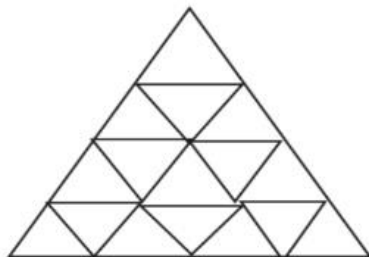


KD Job Updates

Q.No: 11 How many triangles are in the given figure?



दी गई आकृति में कितने त्रिभुज हैं?



27

27

20

20

25

25

24

24

Not Answered

Q.No: 12 In each of the following questions, two numbers are given which follow a certain logical or arithmetic relationship. Identify the same pattern and apply it to find the missing number in the second pair. Choose the correct option from the given alternatives.

14825 : 36047 :: 27416 : ?

निम्नलिखित प्रत्येक प्रश्न में दो संख्याएँ दी गई हैं जो एक निश्चित तार्किक या अंकगणितीय संबंध का पालन करती हैं। समान पैटर्न की पहचान कीजिए और दूसरे जोड़े में लुप्त संख्या ज्ञात करने के लिए इसका प्रयोग कीजिए। दिए गए विकल्पों में से सही विकल्प चुनिए।

14825 : 36047 :: 27416 : ?

49638

49638

39638

39638

48637

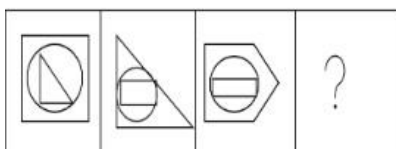
48637

38637

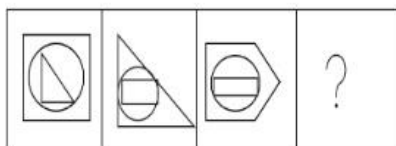
38637

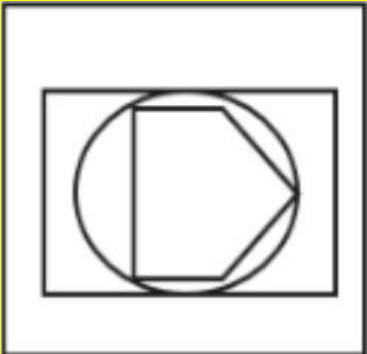
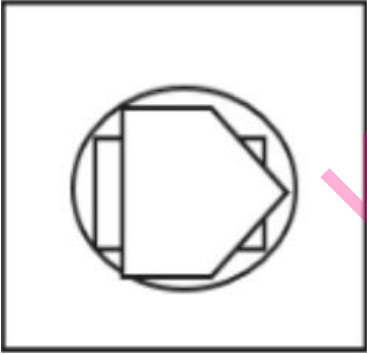
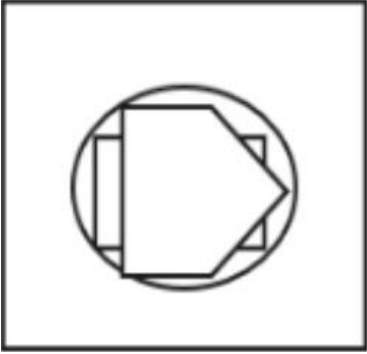
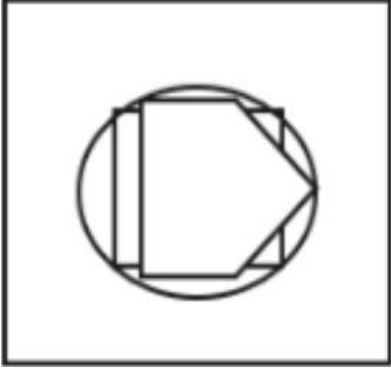
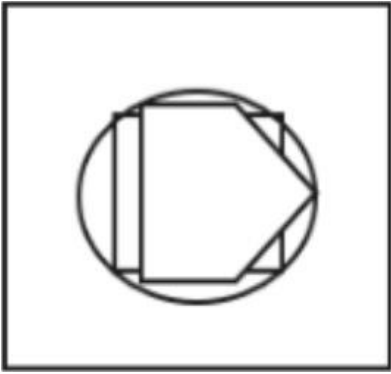
Not Answered

Q.No: 13 Identify the figure that best fits in place of the question mark.

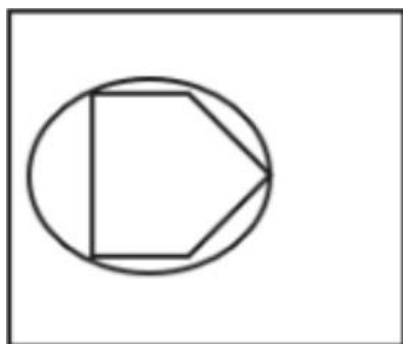
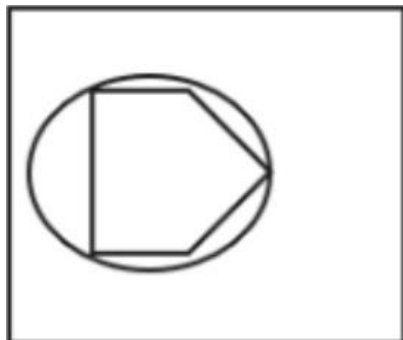
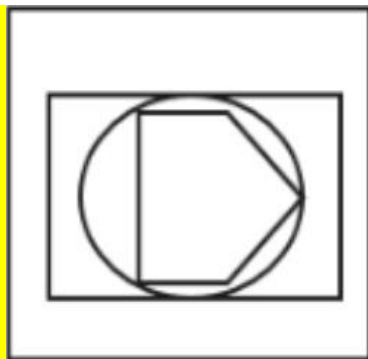


उस आकृति को पहचानिए जो प्रश्न चिह्न के स्थान पर सबसे अच्छी तरह बैठेगी।





KD Job Updates



Not Answered

Q.No: 14 A man walks 12 km north, then turns right and walks 8 km, then again turns right and walks 12 km. How far is he from the starting point?

एक आदमी 12 किमी उत्तर की ओर चलता है, फिर दाएँ मुड़कर 8 किमी चलता है, फिर दाएँ मुड़कर 12 किमी चलता है। वह शुरुआती बिंदु से कितनी दूर है?

8 km

8 किमी

12 km

12 किमी

4 km

4 किमी

6 km

6 किमी

Q.No: 15 Which figure doesn't belong based on vertices?

कौन सी आकृति शीर्षों पर आधारित नहीं है?



Q.No: 16	Choose the next figure. □ □ □ □ ? अगली आकृति चुनें। □ □ □ □ ?
<input type="checkbox"/>	
<input type="checkbox"/>	
<input type="checkbox"/>	
<input checked="" type="checkbox"/>	
<input type="checkbox"/>	
<input type="checkbox"/>	



Q.No: 17	Complete the series: 3, 6, 12, 24, ?, 96 श्रृंखला पूरी करें: 3, 6, 12, 24, ?, 96
<input checked="" type="checkbox"/>	48
<input checked="" type="checkbox"/>	48
<input type="checkbox"/>	40
<input type="checkbox"/>	40
<input type="checkbox"/>	45
<input type="checkbox"/>	45
<input type="checkbox"/>	36
<input type="checkbox"/>	36

Q.No: 18	Find the next term in the given series. 5C, 6D, 10F, 19I, ? दी गई श्रृंखला में अगला पद ज्ञात कीजिए। 5C, 6D, 10F, 19I, ?
<input type="checkbox"/>	30J
<input type="checkbox"/>	30J
<input type="checkbox"/>	34K
<input type="checkbox"/>	34K
<input type="checkbox"/>	33L
<input type="checkbox"/>	33L
<input checked="" type="checkbox"/>	35M
<input checked="" type="checkbox"/>	35M

Q.No: 19	In each of the following questions, a specific pattern is followed for both the letters and the numbers. Identify the set of numbers that correctly fills the blanks in the given sequence. A, 0, D, 8, G, __, J, 42, M, __, P, 100, S, 138, V, 182 निम्नलिखित प्रत्येक प्रश्न में, अक्षरों और संख्याओं दोनों के लिए एक विशिष्ट पैटर्न दिया गया है। दिए गए क्रम में रिक्त स्थानों को सही ढंग से भरने वाले संख्याओं के समूह को पहचानिए। A, 0, D, 8, G, __, J, 42, M, __, P, 100, S, 138, V, 182
<input type="checkbox"/>	(15, 55)
<input type="checkbox"/>	(15, 55)
<input type="checkbox"/>	(25, 73)
<input type="checkbox"/>	(25, 73)
<input type="checkbox"/>	(20, 65)
<input type="checkbox"/>	(20, 65)
<input checked="" type="checkbox"/>	(22, 68)
<input checked="" type="checkbox"/>	(22, 68)

Not Answered

Q.No: 20	<p>In each of the following questions, a specific relationship is given between two words. Identify the word that shares a similar semantic relationship with the given pair. Choose the most appropriate option from the four choices given below.</p> <p>Seed : Sapling :: Fetus : ?</p> <p>निम्नलिखित प्रत्येक प्रश्न में दो शब्दों के बीच एक विशिष्ट संबंध दिया गया है। उस शब्द की पहचान कीजिए जो दिए गए युग्म के साथ समान अर्थ संबंध साझा करता है। नीचे दिए गए चार विकल्पों में से सबसे उपयुक्त विकल्प चुनिए।</p> <p>Seed : Sapling :: Fetus : ?</p>
Embryo	
भ्रूण	
Child	
बच्चा	
Adult	
वयस्क	
Infant	
शिशु	

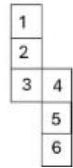
Q.No: 21	<p>How many straight lines are there in the figure? (Don't consider the extra line if there is another line at 180 degrees)</p>  <p>आकृति में कितनी सीधी रेखाएँ हैं? (अगर 180 डिग्री पर कोई दूसरी रेखा हो तो अतिरिक्त रेखा पर विचार न करें)</p> 
5	
5	
12	
12	
10	
10	
4	
4	

Q.No: 22	<p>If 'Alpha' means addition, 'Beta' means subtraction, 'Gamma' means multiplication, and 'Delta' means division, then what is the value of 100 Delta 5 Beta 10 Alpha 2 Gamma 3?</p> <p>यदि 'अल्फा' का अर्थ जोड़ है, 'बीटा' का अर्थ घटाना है, 'गामा' का अर्थ गुणा है, और 'डेल्टा' का अर्थ भाग है, तो 100 डेल्टा 5 बीटा 10 अल्फा 2 गामा 3 का मान क्या है?</p>
36	
36	
22	
22	
26	
26	
16	

Q.No: 23 An unfolded box (cube or cuboid) appeared as shown in the figure, when sheet is folded to form a box. find the number on the face opposite to 6.



जब शीट को मोड़कर बॉक्स बनाया जाता है तो आकृति में दिखाए अनुसार एक खुला बॉक्स (घन या घनाभ) दिखाई देता है। 6 के विपरीत फलक पर संख्या ज्ञात कीजिए।



- 4
- 4
- 2
- 2
- 1
- 1
- 3
- 3

Q.No: 24 A shopkeeper sells a pen for Rs. 45 after giving a discount of 10%. What is the marked price of the pen?

एक दुकानदार एक पेन को 10% की छूट देकर 45 रुपये में बेचता है। पेन की अंकित कीमत क्या है?

- Rs. 60
- 60 रुपये
- Rs. 55
- 55 रुपये
- Rs. 65
- 65 रुपये
- Rs. 50
- 50 रुपये

Q.No: 25 Complete the analogy: HJL : JLN :: QSU : ?

सादृश्य पूरा करें: HJL : JLN :: QSU : ?










- STX
- STX
- SUV
- SUV
- SUV
- SUV
- RSW
- RSW

Q.No: 26 34, 68, 102, 136, 170, 185 - which number doesn't follow the series rule?

34, 68, 102, 136, 170, 185 - कौन सी संख्या श्रृंखला नियम का पालन नहीं करती है?

- 170
- 170
- 34
- 34
- 136
- 136

Q.No: 27	<p>Criteria to be selected as Field Officer (as on 01-01-2024):</p> <p>Graduate in Agriculture or Environmental Science with at least 65% marks. Age between 23 and 35 years. Must have a valid driving license. Should have field experience of at least 2 years.</p> <p>Special Clause: If candidate has no driving license but more than 4 years of field experience, refer to Regional Head.</p> <p>Case: Shalini is 29 years old, has 68% in Environmental Science, 5 years of field work, but does not hold a driving license.</p> <p>Question: What should be done in Shalini's case?</p> <p>फील्ड ऑफिसर के रूप में चयन के मानदंड (01-01-2024 तक): कृषि या पर्यावरण विज्ञान में कम से कम 65% अंकों के साथ स्नातक। आयु 23 से 35 वर्ष के बीच। वैध ड्राइविंग लाइसेंस होना आवश्यक है। कम से कम 2 वर्ष का फील्ड अनुभव होना चाहिए।</p> <p>विशेष खंड: यदि उम्मीदवार के पास ड्राइविंग लाइसेंस नहीं है, लेकिन 4 वर्ष से अधिक का फील्ड अनुभव है, तो क्षेत्रीय प्रमुख से संपर्क करें।</p> <p>मामला: शालिनी 29 वर्ष की है, उसके पर्यावरण विज्ञान में 68% अंक हैं, उसने 5 वर्ष फील्ड वर्क किया है, लेकिन उसके पास ड्राइविंग लाइसेंस नहीं है।</p> <p>प्रश्न: शालिनी के मामले में क्या किया जाना चाहिए?</p>
	Reject the candidate
	उम्मीदवार को अस्वीकार करें
	Refer to Regional Head
	क्षेत्रीय प्रमुख से संपर्क करें
	Call for interview
	साक्षात्कार के लिए बुलावा
	Select the candidate
	उम्मीदवार का चयन करें

Q.No: 28	<p>Identify the odd image out:</p> <p></p> <p>विषम छवि को पहचानें:</p> <p></p>
	
	
	
	
	
	
	
	

Q.No: 29	<p>Read the information carefully and identify the correct relationship between the persons mentioned in the question.</p> <p>Ravi is the son of Pooja. Pooja is the daughter-in-law of Shyam. Shyam is the father of Karan.</p> <p>Question: How is Karan related to Ravi?</p> <p>दी गई जानकारी को ध्यानपूर्वक पढ़ें और प्रश्न में उल्लिखित व्यक्तियों के बीच सही संबंध पहचानें। रवि, पूजा का पुत्र है। पूजा, श्याम की पुत्रवधू है। श्याम, करण का पिता है।</p> <p>प्रश्न: करण, रवि से किस प्रकार संबंधित है?</p>
----------	--

Brother

भाई

Father

पिता

Uncle

चाचा

Grandfather

दादाजी

Q.No: 30 Which of the following does NOT belong to the group?
निम्नलिखित में से कौनसा समूह से संबंधित नहीं है?

Cotton

कपास

Rose

गुलाब

Jasmine

चमेली

Lotus

कमल

Q.No: 31 **Criteria to be selected as Lab Assistant (as on 01-03-2024):**
Must have a Diploma in Lab Technology with at least 60% marks.
Age must be 21 to 28 years.
Should have minimum 1 year practical lab experience.
Must be willing to work in night shifts.
Special Clause:
If the candidate has 70% in Diploma but only 6 months of experience, refer to Chief Lab Supervisor.
Case:
Irfan is 22 years old, has 72% in Lab Diploma, 6 months of experience, and agrees to night shifts.
Question: What should be done in Irfan's case?
लैब असिस्टेंट के रूप में चुने जाने के लिए मानदंड (दिनांक 01-03-2024 तक):
लैब टेक्नोलॉजी में डिप्लोमा न्यूनतम 60% अंकों के साथ होना चाहिए।
आयु 21 से 28 वर्ष के बीच होनी चाहिए।
न्यूनतम 1 वर्ष का व्यावहारिक लैब अनुभव होना चाहिए।
नाइट शिफ्ट में काम करने के लिए तैयार होना चाहिए।
विशेष खंड:
यदि उम्मीदवार के डिप्लोमा में 70% अंक हैं, लेकिन केवल 6 महीने का अनुभव है, तो मुख्य लैब सुपरवाइजर को भेजें।
मामला:
इरफ़ान की उम्र 22 साल है, लैब डिप्लोमा में 72% अंक हैं, 6 महीने का अनुभव है, और वह नाइट शिफ्ट के लिए सहमत है।
प्रश्न: इरफ़ान के मामले में क्या किया जाना चाहिए?

Refer to Chief Lab Supervisor

मुख्य लैब सुपरवाइजर को भेजें

Reject the candidate

उम्मीदवार को अस्वीकार करें।

Information insufficient

जानकारी अपर्याप्त है।

Select the candidate

उम्मीदवार का चयन करें।

Q.No: 32 In each of the following series, determine the pattern and find the missing number represented by (?). Choose the correct answer from the given options. **120, 131, 115, 126, 110, (?)**
निम्नलिखित प्रत्येक श्रृंखला में, पैटर्न निर्धारित कीजिए और (?) द्वारा दर्शाई गई लुप्त संख्या ज्ञात कीजिए। दिए गए विकल्पों में से सही उत्तर चुनिए: **120, 131, 115, 126, 110, (?)**

121

121

116

116

Q.No: 33 Find the missing number in the series: 2, 4, 8, 16, ?, 64

श्रृंखला में लुप्त संख्या ज्ञात कीजिए: 2, 4, 8, 16, ?, 64

30

30

24

24

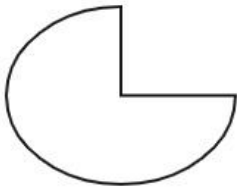
32

32

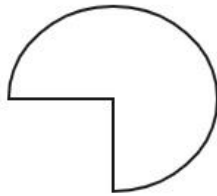
36

36

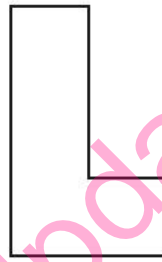
Q.No: 34 If Figure A is rotated to figure B then figure C is rotated to?



A

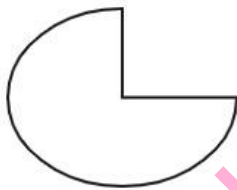


B

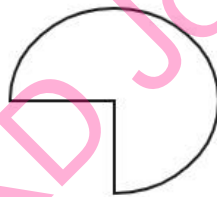


C

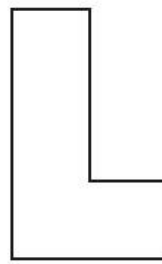
यदि आकृति A को आकृति B में घुमाया जाए तो आकृति C को घुमाया जाएगा?



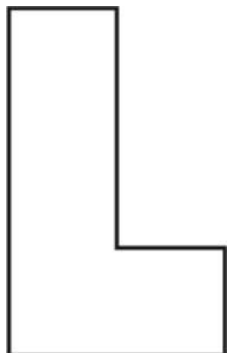
A

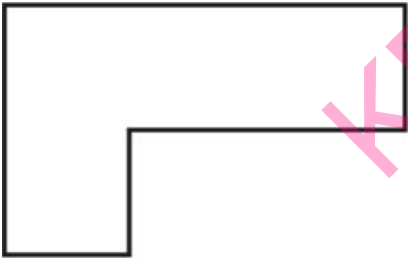
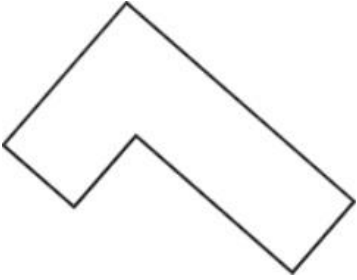
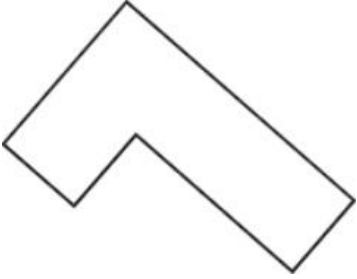


B



C





KD Job Updates



Q.No: 35	<p>Post: Junior Librarian Eligibility Criteria (as on 01-04-2025): Must have a Bachelor's degree in Library Science (B.Lib.Sc.) Age must be less than 32 years. Must have minimum 1 year experience in any library.</p> <p>Case: Rina is 31, has B.Lib.Sc., and has 18 months experience in a college library. What should be done in Rina's case?</p> <p>पद: जूनियर लाइब्रेरियन पात्रता मानदंड (01-04-2025 तक): लाइब्रेरी साइंस (बी.लिब.एससी.) में स्नातक की डिग्री होनी चाहिए। आयु 32 वर्ष से कम होनी चाहिए। किसी भी पुस्तकालय में कम से कम 1 वर्ष का अनुभव होना चाहिए।</p> <p>मामला: रीना 31 वर्ष की है, उसके पास बी.लिब.एससी. है, और उसे कॉलेज के पुस्तकालय में 18 महीने का अनुभव है। रीना के मामले में क्या किया जाना चाहिए?</p> <p>Reject the candidate</p> <p>उम्मीदवार को अस्वीकार करें</p> <p>Information insufficient</p> <p>जानकारी अपर्याप्त</p> <p>Refer to Senior Librarian</p> <p>वरिष्ठ लाइब्रेरियन से संपर्क करें</p> <p>Select the candidate</p> <p>उम्मीदवार का चयन करें</p>
----------	---

Q.No: 36	<p>Read scenario carefully, evaluate all options, identify the action that best navigates the various competing factors and values. You are part of a volunteer committee overseeing a local community garden project that is struggling financially. A large, successful local business offers a substantial donation that would secure the garden's operations for the next year. However, their offer comes with the condition that they can paint their corporate logo, in bright, contrasting colors, prominently on the garden's main entrance arch, which clashes significantly with the garden's established natural and rustic aesthetic.</p> <p>Question: Given this situation, which of the following is the most ethical and responsible action?</p> <p>परिदृश्य को ध्यान से पढ़ें, सभी विकल्पों का मूल्यांकन करें, और उस कार्य की पहचान करें जो विभिन्न प्रतिस्पर्धी कारकों और मूल्यों को सबसे अच्छी तरह से संतुलित करता है। आप एक स्वयंसेवी समिति का हिस्सा हैं जो एक स्थानीय सामुदायिक उद्यान परियोजना की देखरेख कर रही है जो वित्तीय रूप से संघर्ष कर रही है। एक बड़ा, सफल स्थानीय व्यवसाय एक महत्वपूर्ण दान की पेशकश करता है जो अगले वर्ष के लिए उद्यान के संचालन को सुरक्षित करेगा। हालांकि, उनकी पेशकश इस शर्त के साथ आती है कि वे अपने कॉर्पोरेट लोगो को, चमकीले, विपरीत रंगों में, उद्यान के मुख्य प्रवेश द्वार के मेहराब पर प्रमुखता से पेंट कर सकते हैं, जो उद्यान के स्थापित प्राकृतिक और देहाती सौंदर्य के साथ काफी मेल नहीं खाता।</p> <p>प्रश्न: इस स्थिति को देखते हुए, निम्नलिखित में से कौन सा सबसे नैतिक और जिम्मेदार कार्य है?</p> <p>Immediately accept the donation and the logo placement, prioritizing the garden's financial survival above all else.</p> <p>दान और लोगो लगाने को तुरंत स्वीकार करें, उद्यान के वित्तीय अस्तित्व को सबसे ऊपर प्राथमिकता दें।</p> <p>Decline the donation entirely, citing the conflict with the garden's aesthetic and core values, even if it means potential closure.</p> <p>दान को पूरी तरह से अस्वीकार कर दें, उद्यान के सौंदर्य और मूल मूल्यों के साथ टकराव का हवाला देते हुए, भले ही इसका मतलब संभावित बंद होना हो।</p> <p>Express gratitude for the offer and attempt to negotiate alternative forms of recognition, such as a smaller, less prominent plaque, or a mention on the garden's website, explaining the importance of maintaining the garden's aesthetic integrity.</p> <p>प्रस्ताव के लिए आभार व्यक्त करें और मान्यता के वैकल्पिक रूपों पर बातचीत करने का प्रयास करें, जैसे कि एक छोटी, कम प्रमुख पट्टिका, या उद्यान की वेबसाइट पर उल्लेख, उद्यान के सौंदर्य अखंडता को बनाए रखने के महत्व को समझाते हुए।</p>
----------	--

Accept the donation and the logo placement, with the intention of secretly removing or altering the logo after a few months once the funds are secured.

दान और लोगो लगाने को स्वीकार करें, इस इरादे से कि कुछ महीनों के बाद एक बार धन सुरक्षित हो जाने पर गुप्त रूप से लोगो को हटा दिया जाए या बदल दिया जाए।

Not Answered

Q.No: 37 In each of the following questions, a specific relationship is given between two words. Identify the word that shares a similar semantic relationship with the given pair. Choose the most appropriate option from the four choices given below.

Doctor : Diagnosis :: Judge : ?

निम्नलिखित प्रत्येक प्रश्न में दो शब्दों के बीच एक विशिष्ट संबंध दिया गया है। उस शब्द की पहचान कीजिए जो दिए गए युग्म के साथ समान अर्थ संबंध साझा करता है। नीचे दिए गए चार विकल्पों में से सबसे उपयुक्त विकल्प चुनिए।

Doctor : Diagnosis :: Judge : ?

Court

अदालत

Verdict

निर्णय

Law

कानून

Jury

जूरी

Q.No: 38 Choose the correct number to complete the analogy.

8 : 64 :: 10 : ?

सादृश्य को पूरा करने के लिए सही संख्या चुनें।

8 : 64 :: 10 : ?

80

80

120

120

100

100

90

90

Q.No: 39 What will come in place of the question mark (?) in the following equation?

72÷9-15+4×3=?

निम्नलिखित समीकरण में प्रश्नवाचक चिह्न (?) के स्थान पर क्या आएगा?

72÷9-15+4×3=?

17

17

-3

-3

5

5

1

1

Q.No: 40 Read the situation and choose the best judgment:

While enjoying a walk in a local park, you find a wallet lying on a bench. Upon opening it, you see it contains a significant amount of cash, credit cards, and an ID card with the owner's name and address.

Question: Given this situation, which of the following is the most ethical and responsible action?

स्थिति को ध्यान से पढ़ें और सर्वोत्तम निर्णय चुनें:

किसी स्थानीय पार्क में टहलते समय, आपको एक बेंच पर एक बटुआ पड़ा मिलता है। उसे खोलने पर, आप देखते हैं कि उसमें काफी मात्रा में नकदी, क्रेडिट कार्ड और मालिक का नाम और पता लिखा एक पहचान पत्र है।

प्रश्न: इस स्थिति में, निम्नलिखित में से कौन सा कदम सबसे नैतिक और ज़िम्मेदाराना होगा?

Take the cash and leave the wallet with the ID and cards on the bench, hoping someone else finds it.

नकदी ले लो और पहचान पत्र तथा कार्ड सहित बटुआ बेंच पर छोड़ दो, इस उम्मीद में कि कोई और उसे पा लेगा।

Try to find the owner yourself by going to the address on the ID, even if it's far away or seems inconvenient.

आईडी पर दिए गए पते पर जाकर स्वयं मालिक को ढूंढने का प्रयास करें, भले ही वह बहुत दूर हो या असुविधाजनक लगे।

Turn the entire wallet (cash, cards, ID) over to the nearest police station or park lost-and-found office.

अपना पूरा बटुआ (नकदी, कार्ड, पहचान पत्र) निकटतम पुलिस स्टेशन या पार्क के खोया-पाया कार्यालय में जमा कर दें।

Use the contact information on the ID to call the owner directly and arrange a meeting to return it yourself.

आईडी पर दी गई संपर्क जानकारी का उपयोग करके सीधे मालिक से संपर्क करें और उसे स्वयं वापस करने के लिए एक बैठक की व्यवस्था करें।

Q.No: 41 Address 1: Ms. Rina Dey, Flat No. 302, Block A, Sunrise Apartments, Mumbai – 400089
Address 2: Ms. Rina Dey, A-302, Sunrise Apt., Mumbai 400089
Which of the following is TRUE?

पता 1: सुश्री रीना डे, फ्लैट नंबर 302, ब्लॉक ए, सनराइज अपार्टमेंट, मुंबई – 400089

पता 2: सुश्री रीना डे, ए-302, सनराइज अपार्टमेंट, मुंबई 400089

निम्नलिखित में से कौन सा सत्य है?

The addresses refer to the same location

ये पते एक ही स्थान को संदर्भित करते हैं

The city pin codes are different

शहर के पिन कोड अलग-अलग हैं

The apartment names differ

अपार्टमेंट के नाम अलग-अलग हैं

The block and flat number do not match

ब्लॉक और फ्लैट नंबर मेल नहीं खाते

Q.No: 42 NPCI is to Digital Payment as UIDAI is to...?

एनपीसीआई डिजिटल भुगतान के लिए वही है जो यूआईडीएआई के लिए है...?

Voter List

मतदाता सूची

Census

जनगणना

Biometric Identity

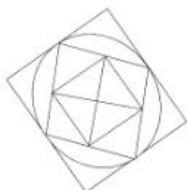
बायोमेट्रिक पहचान

e-Commerce

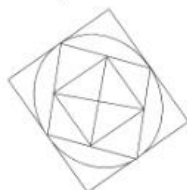
ई-कॉमर्स

Not Answered

Q.No: 43 How many triangles are there in the given figure.



दी गई आकृति में कितने त्रिभुज हैं?



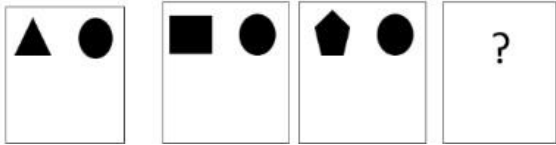
15

15




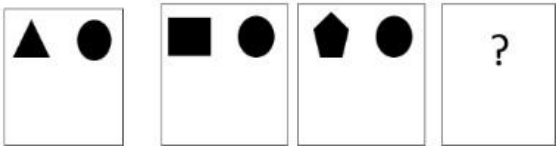
14



14

Q.No: 44 What will be the next figure?




अगला आंकड़ा क्या होगा?





KD Job Updates



Q.No: 45

Which figure should replace the question mark?

P	K R	Q T	G V	E K	?
Q	R S	H U	F W	D L	?


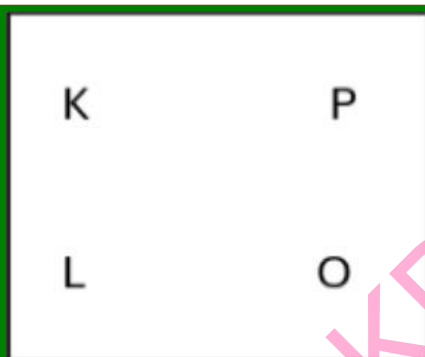
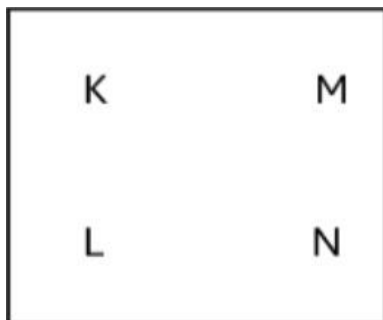
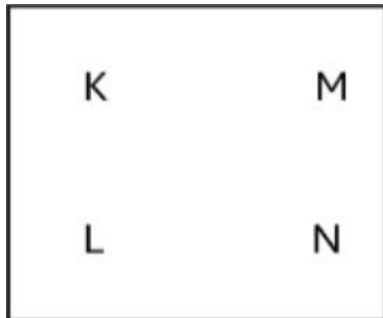
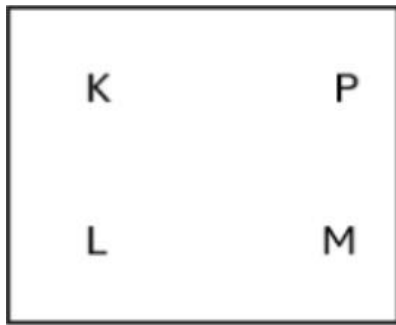
प्रश्न चिन्ह के स्थान पर कौन सी आकृति आनी चाहिए?

P	K R	Q T	G V	E K	?
Q	R S	H U	F W	D L	?

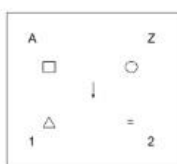
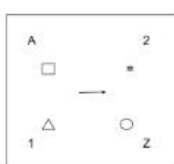
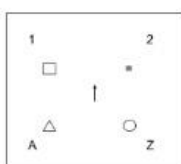
K	Q
L	Y

K	Q
L	Y

K	P
L	M

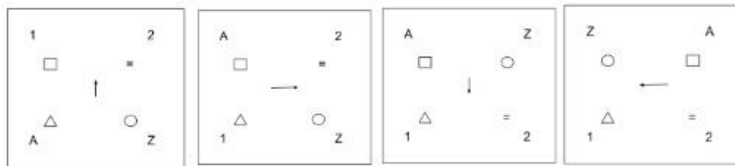


Q.No: 46 Which of the following figures will complete the figural series given below?

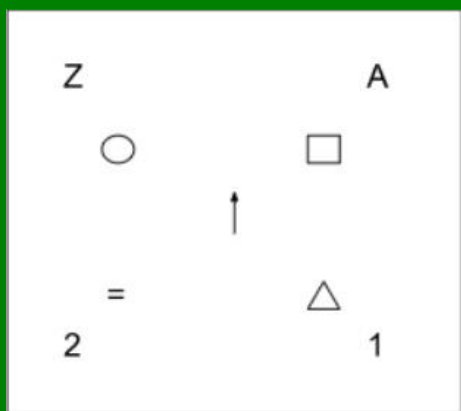
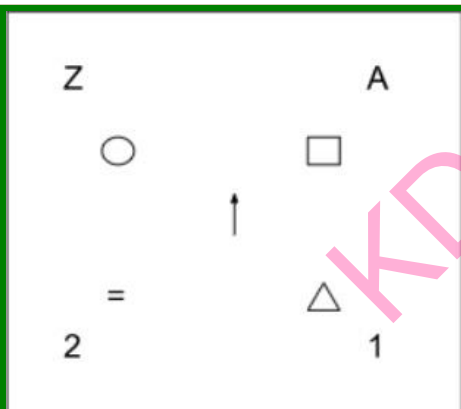
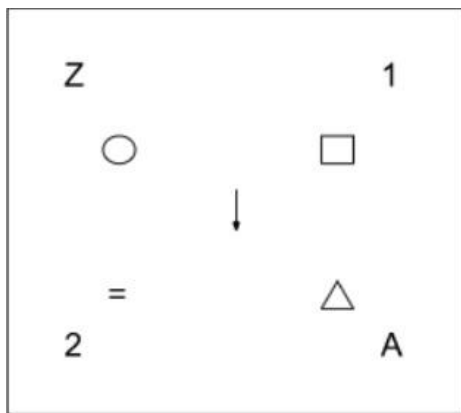
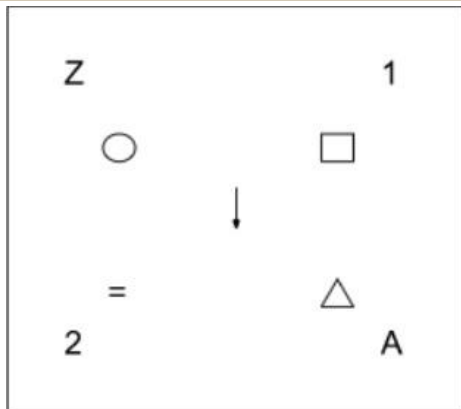


?????

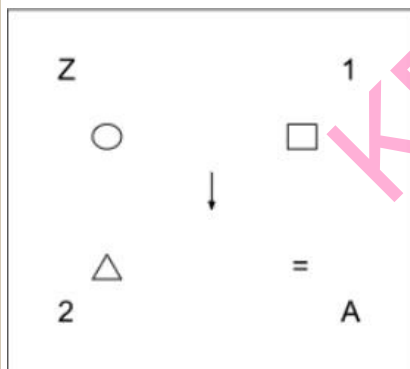
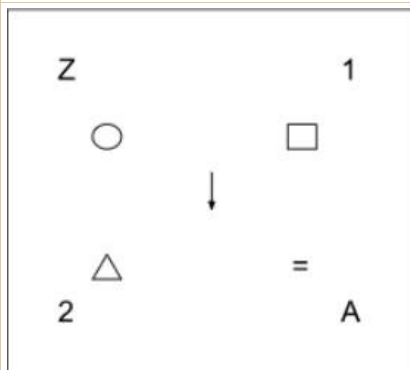
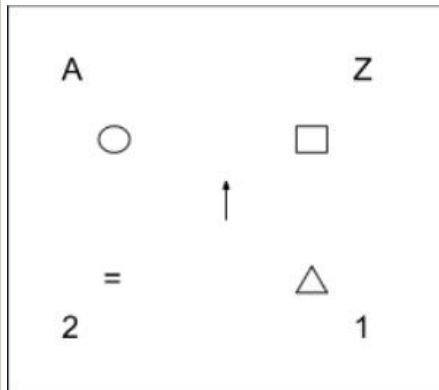
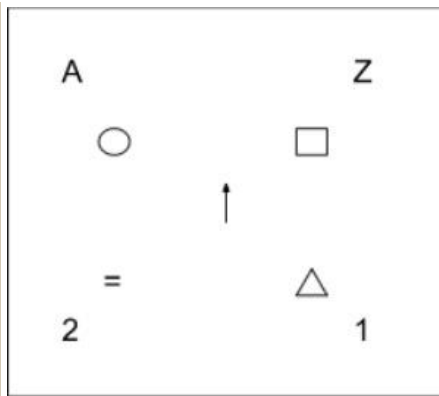
निम्नलिखित में से कौन सी आकृति नीचे दी गई आकृति श्रृंखला को पूरा करेगी?



?????

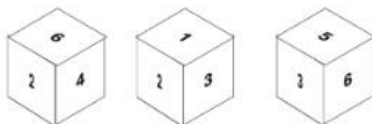


KD Job Updates

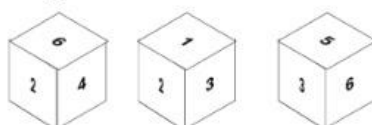


Q.No: 47

Choose the figure that will be formed when the cube is unfolded.



उस आकृति का चयन करें जो घन को खोलने पर बनेगी।

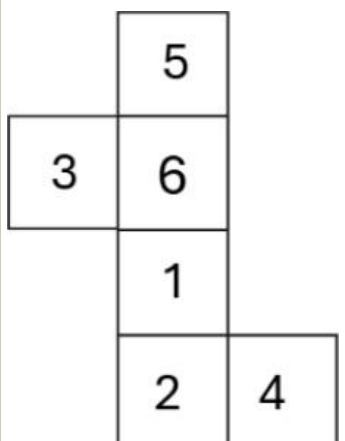
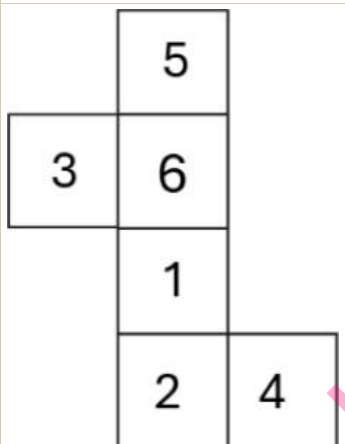
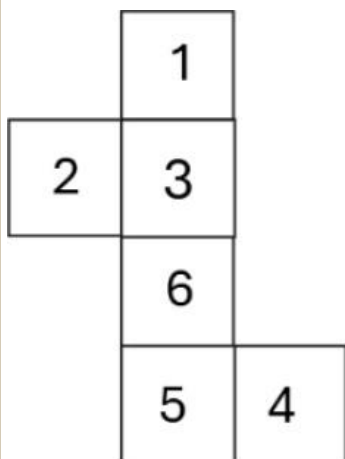
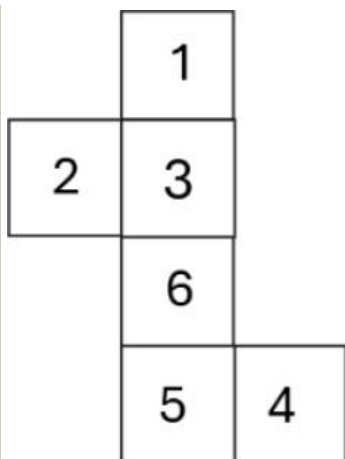


	6	
2	4	
	1	
	3	5

	6	
2	4	
	1	
	3	5

	2	
3	4	
	1	
	6	5

	2	
3	4	
	1	
	6	5



Q.No: 48 | Amazon, Nile, Ganga, Everest – which is not like the others?

अमेज़न, नील, गंगा, एवरेस्ट - इनमें से कौन सा अन्यो जैसा नहीं है?

Nile
नील
Everest
एवरेस्ट
Ganga
गंगा
Amazon
अमेज़न

Q.No: 49	Which figure comes next in the series? ▲ ▼ ▲ ▼ ▲ ? श्रृंखला में अगली आकृति कौन सी आएगी? ▲ ▼ ▲ ▼ ▲ ?
▼	
▼	
▲	
▲	
▲	
▲	
▼	
▼	

Q.No: 50	Choose the figure that does not belong to the group. उस आकृति को चुनें जो समूह से संबंधित नहीं है।
<input type="checkbox"/>	
<input type="checkbox"/>	
<input type="checkbox"/>	
<input type="checkbox"/>	
<input type="checkbox"/>	
<input type="checkbox"/>	
<input type="checkbox"/>	

PART - B (General Awareness)

Q.No: 51	Which of the following statements about the G ₀ (G zero phase) phase of the cell cycle is most accurate? कोशिका चक्र के G ₀ (G शून्य चरण) चरण के बारे में निम्नलिखित में से कौन सा कथन सबसे सटीक है?
DNA synthesis occurs rapidly in cells present in the G ₀ phase. G ₀ चरण में उपस्थित कोशिकाओं में DNA संश्लेषण तेजी से होता है। It is the phase where cell division is initiated in cancerous cells. यह वह चरण है जहां कैंसर कोशिकाओं में कोशिका विभाजन शुरू होता है। It is a temporary quiescent stage where cells exit the cell cycle. यह एक अस्थायी निष्क्रिय अवस्था है जहां कोशिकाएं कोशिका चक्र से बाहर निकलती हैं। Cells in G ₀ actively prepare for DNA replication. G ₀ में कोशिकाएं सक्रिय रूप से DNA प्रतिकृति के लिए तैयारी करती हैं।	

Q.No: 52	India's improvement in the Rule of Law Index is most critically challenged by which factor? विधि नियम सूचकांक में भारत के सुधार को सबसे अधिक चुनौती किस कारक से मिल रही है?
Slow judicial delivery धीमी न्यायिक कार्यवाही Legislative overreach विधायी अतिक्रमण	

Executive dominance

कार्यकारी प्रभुत्व

Media bias

मीडिया पूर्वाग्रह

Not Answered

Q.No: 53 Which instrument is commonly used in Carnatic classical music?

कर्नाटक संगीत में सामान्यतः प्रयोग होने वाला वाद्य यंत्र कौन-सा है?

Dhol

ढोल

Mridangam

मृदंगम

Santoor

संतूर

Shehnai

शहनाई

Q.No: 54 What trend is reflected by increasing share of urban people in non-manual tertiary occupations?

गैर-शारीरिक तृतीयक व्यवसायों में शहरी लोगों की बढ़ती हिस्सेदारी से क्या प्रवृत्ति परिलक्षित होती है?

Spatial literacy inequality

स्थानिक साक्षरता असमानता

Gendered education access

लिंग आधारित शिक्षा तक पहुँच

Emerging service economy

उभरती सेवा अर्थव्यवस्था

De-industrialization

वि-औद्योगीकरण

Q.No: 55 Which region has become the new epicenter of global terrorism, according to the GTI (Global Terrorism Index) 2024?

जीटीआई (वैश्विक आतंकवाद सूचकांक) 2024 के अनुसार कौन सा क्षेत्र वैश्विक आतंकवाद का नया केंद्र बन गया है?

Southeast Asia

दक्षिण पूर्व एशिया

Central Sahel region of sub-Saharan Africa

उप-सहारा अफ्रीका का मध्य साहेल क्षेत्र

Central Asia

मध्य एशिया

Middle East and North Africa

मध्य पूर्व और उत्तरी अफ्रीका

Not Answered

Q.No: 56 Match the following Wildlife Sanctuaries (Column A) with their respective States (Column B). Choose the option correct option:

Column A (Wildlife Sanctuary)	Column B (State)
1. Gandhi Sagar WLS	a. Assam
2. Sonai Rupai WLS	b. Madhya Pradesh
3. Kaimur WLS	c. Telangana
4. Eturnagaram WLS	d. Bihar

निम्नलिखित वन्यजीव अभयारण्यों (स्तंभ A) को उनके संबंधित राज्यों (स्तंभ B) से मिलाइए। सही विकल्प चुनिए:

स्तंभ A (वन्यजीव अभयारण्य)	स्तंभ B (राज्य)
1. गांधी सागर वन्यजीव अभयारण्य	a. असम
2. सोनाई रुपाई वन्यजीव अभयारण्य	b. मध्य प्रदेश
3. कैमूर वन्यजीव अभयारण्य	c. तेलंगाना
4. एतुर्नागारम वन्यजीव अभयारण्य	d. बिहार

1-b, 2-a, 3-d, 4-c

1-b, 2-a, 3-d, 4-c

1-a, 2-c, 3-b, 4-d

1-a, 2-c, 3-b, 4-d

1-d, 2-c, 3-a, 4-b

1-d, 2-c, 3-a, 4-b

1-c, 2-d, 3-a, 4-b

1-c, 2-d, 3-a, 4-b

Q.No: 57 Which high-altitude observatory in India is known for hosting an optical-infrared telescope used for space observation in Ladakh?
भारत में कौन सी उच्च-ऊँचाई वाली वेधशाला लद्दाख में अंतरिक्ष अवलोकन के लिए उपयोग किए जाने वाले ऑप्टिकल-इन्फ्रारेड टेलीस्कोप की मेजबानी के लिए जानी जाती है?

Udaipur Solar Observatory

उदयपुर सौर वेधशाला

Hanle Indian Astronomical Observatory

हान्ले भारतीय खगोलीय वेधशाला

Nainital Aryabhatta Observatory

नैनीताल आर्यभट्ट वेधशाला

Mount Abu Infrared Observatory

माउंट आबू इन्फ्रारेड वेधशाला

Q.No: 58 Which type of galaxy has no regular shape and is rich in gas and dust?
किस प्रकार की आकाशगंगा का कोई नियमित आकार नहीं है और वह गैस और धूल से समृद्ध है?

Elliptical Galaxy

दीर्घवृत्ताकार आकाशगंगा

Lenticular Galaxies

लेंटिकुलर आकाशगंगाएँ

Irregular Galaxy

अनियमित आकाशगंगा

Spiral Galaxy

सर्पिल आकाशगंगा

Q.No: 59 Consider the emphasis placed on the public sector in India's industrial development strategy between 1947 and 1990. What was a key rationale behind giving the public sector a dominant role during this period?

1947 और 1990 के बीच भारत की औद्योगिक विकास रणनीति में सार्वजनिक क्षेत्र पर दिए गए जोर पर विचार करें। इस अवधि के दौरान सार्वजनिक क्षेत्र को प्रमुख भूमिका देने के पीछे मुख्य तर्क क्या था?

There was a lack of demand for industrial goods in the domestic market, necessitating government intervention.

घरेलू बाजार में औद्योगिक वस्तुओं की मांग में कमी थी, जिसके कारण सरकारी हस्तक्षेप ज़रूरी हो गया।

Public sector industries were inherently more efficient than private sector ones.

सार्वजनिक क्षेत्र के उद्योग निजी क्षेत्र के उद्योगों की तुलना में स्वाभाविक रूप से ज्यादा कुशल थे।

The private sector had sufficient capital and technological expertise to drive industrialization in all key sectors.

सभी प्रमुख क्षेत्रों में औद्योगीकरण को बढ़ावा देने के लिए निजी क्षेत्र के पास पर्याप्त पूंजी और तकनीकी विशेषज्ञता थी।

The public sector was seen as a tool for achieving social goals, promoting balanced regional development, and controlling strategic industries.

सार्वजनिक क्षेत्र को सामाजिक लक्ष्यों को प्राप्त करने, संतुलित क्षेत्रीय विकास को बढ़ावा देने और रणनीतिक उद्योगों को नियंत्रित करने के एक उपकरण के रूप में देखा गया।

Q.No: 60 In what way did **fiscal discipline reforms** affect center-state financial relations post-1991?

1991 के बाद **राजकोषीय अनुशासन सुधारों** ने केंद्र-राज्य वित्तीय संबंधों को किस प्रकार प्रभावित किया?

Reduced tax sharing

कम कर बंटवारा

States had to adhere to fiscal targets

राज्यों को राजकोषीय लक्ष्यों का पालन करना होगा

Increased state autonomy in tax policy

कर नीति में राज्य की स्वायत्तता में वृद्धि

Centralized control over agriculture pricing

कृषि मूल्य निर्धारण पर केंद्रीकृत नियंत्रण

Q.No: 61 Which of the following agro-climatic and soil conditions is most suitable for the cultivation of wheat?

निम्नलिखित में से कौन सी कृषि-जलवायु और मृदा परिस्थितियाँ गेहूँ की खेती के लिए सबसे उपयुक्त हैं?

Arid crop; temperature above 40°C; sandy loam soil

शुष्क फसल; तापमान 40°C से अधिक; रेतीली दोमट मिट्टी

Subtropical crop; high humidity; laterite soil

उपोष्णकटिबंधीय फसल; उच्च आर्द्रता; लैटेराइट मिट्टी

Temperate crop; winter temp 10–15°C, summer 21–26°C; clay loam soil

शीतोष्ण फसल; सर्दियों का तापमान 10-15 डिग्री सेल्सियस, गर्मियों का तापमान 21-26 डिग्री सेल्सियस; चिकनी दोमट मिट्टी

Tropical crop; 30–35°C temperature; sandy soil

उष्णकटिबंधीय फसल; 30-35 डिग्री सेल्सियस तापमान; रेतीली मिट्टी

Q.No: 62 According to Lenz's Law, what determines the direction of an induced current in a conductor?

लेन्ज़ के नियम के अनुसार, किसी चालक में प्रेरित धारा की दिशा क्या निर्धारित करती है?

It continuously reduces the applied magnetic flux.

यह लगातार लागू चुंबकीय प्रवाह को कम करता है।

It always enhances the existing magnetic field.

यह सदैव विद्यमान चुंबकीय क्षेत्र को बढ़ाता है।

It flows to oppose the variation in magnetic flux causing it.

यह चुंबकीय प्रवाह में परिवर्तन का विरोध करने के लिए प्रवाहित होता है।

It is proportional to the strength of the magnetic field.

यह चुंबकीय क्षेत्र की ताकत के समानुपाती होता है।

Not Answered

Q.No: 63 What led to the decline of Timurid power in the second half of the 15th century?

15वीं शताब्दी के उत्तरार्ध में तैमूर शक्ति के पतन का क्या कारण था?

Economic decline due to maritime trade shifts

समुद्री व्यापार में बदलाव के कारण आर्थिक गिरावट

Internal wars due to partitioning

विभाजन के कारण आंतरिक युद्ध

Rise of Uzbeks

उज़बेकों का उदय

Ottoman invasions

ओटोमन आक्रमण

Not Answered

Q.No: 64 Which planet has the longest day in the solar system?

सौरमंडल में किस ग्रह का दिन सबसे लंबा होता है?

Venus

शुक्र

Mars

मंगल

Jupiter

बृहस्पति

Earth

पृथ्वी

Q.No: 65 Which of the following schemes provides annual income support to farmers directly into their bank accounts?

निम्नलिखित में से कौन सी योजना किसानों को सीधे उनके बैंक खातों में वार्षिक आय सहायता प्रदान करती है?

PM Fasal Bima Yojana

पीएम फसल बीमा योजना

PM-KISAN

पीएम-किसान

MGNREGA

महात्मा गांधी राष्ट्रीय ग्रामीण रोजगार गारंटी अधिनियम (मनरेगा)

PM Jan Dhan Yojana

पीएम जनधन योजना

Q.No: 66 What is one of the major future impacts of ISRO's Aditya-L1 mission that studies the Sun's chromosphere and corona?

इसरो के आदित्य-एल1 मिशन का भविष्य में क्या प्रमुख प्रभाव होगा, जो सूर्य के क्रोमोस्फीयर और कोरोना का अध्ययन करता है?

Mapping of asteroids beyond Neptune

नेपच्यून से परे क्षुद्रग्रहों का मानचित्रण

Enhanced rainfall prediction in monsoon regions

मानसून क्षेत्रों में वर्षा की बेहतर भविष्यवाणी

Improved space weather forecasting to protect satellites and power systems

उपग्रहों और विद्युत प्रणालियों की सुरक्षा के लिए बेहतर अंतरिक्ष मौसम पूर्वानुमान

Development of underwater navigation systems

पानी के अंदर नेविगेशन प्रणालियों का विकास

Not Answered

Q.No: 67 Identify the dance style recognized for its spiritual devotion and connection to the Vaishnavite movement.

कौन-सी नृत्य शैली अपनी आध्यात्मिक भक्ति और वैष्णव आंदोलन से जुड़ाव के लिए प्रसिद्ध है?

Bharatnatyam

भरतनाट्यम

Kathak

कथक

Odissi

ओडिसी

Sattriya

सत्रिया

Q.No: 68	<p>Read the following statements about Trade Policy Reform:</p> <p>Statement I: Trade policy reform in India involved removing quantitative restrictions on imports and exports.</p> <p>Statement II: Trade policy reform increased import licensing to support domestic manufacturers.</p> <p>व्यापार नीति सुधार के बारे में निम्नलिखित कथनों को पढ़ें:</p> <p>कथन I: भारत में व्यापार नीति सुधार में आयात और निर्यात पर मात्रात्मक प्रतिबंधों को हटाना शामिल था।</p> <p>कथन II: व्यापार नीति सुधार ने घरेलू निर्माताओं को समर्थन देने के लिए आयात लाइसेंसिंग में वृद्धि की।</p>
	Both statements I and II are correct
	कथन I और II दोनों सही हैं
	Both statements I and II are incorrect
	कथन I और II दोनों गलत हैं
	Only Statement II is correct
	केवल कथन II सही है
	Only Statement I is correct
	केवल कथन I सही है
	Not Answered

Q.No: 69	<p>Which type of vehicle is commonly used in zero-emission public transport systems?</p> <p>शून्य-उत्सर्जन सार्वजनिक परिवहन प्रणालियों में सामान्यतः किस प्रकार के वाहन उपयोग में लाए जाते हैं?</p>
	Diesel buses
	डीज़ल बसें
	Electric buses
	विद्युत बसें
	Petrol cars
	पेट्रोल कारें
	Hybrid vehicles
	हाइब्रिड वाहन

Q.No: 70	<p>Where was the Khelo India Youth Games 2024 held?</p> <p>खेलो इंडिया यूथ गेम्स 2024 कहाँ आयोजित किया गया?</p>
	Kerala
	गोवा
	Tamil Nadu
	तमिलनाडु
	Odisha
	ओडिशा
	Maharashtra
	महाराष्ट्र

Q.No: 71	<p>Which of the following reflects the 'what to produce' decision in economics?</p> <p>निम्नलिखित में से कौन सा अर्थशास्त्र में 'क्या उत्पादन किया जाए' निर्णय को दर्शाता है?</p>
	Choosing between capital and consumer goods
	पूंजी और उपभोक्ता वस्तुओं के बीच चयन
	Increasing taxes to raise government revenue
	सरकारी राजस्व बढ़ाने के लिए करों में वृद्धि
	Deciding on distribution of output
	आउटपुट के वितरण पर निर्णय लेना
	Choosing method of production
	उत्पादन की विधि का चयन

Q.No: 72	<p>Read the below statements and choose the correct option:</p> <p>Statement 1: India's first initiative to track Fishing Cats through radio-collars has been introduced at Coringa Wildlife Sanctuary.</p> <p>Statement 2: Fishing Cats are primarily found in coastal wetlands and mangrove ecosystems.</p>
----------	--

नीचे दिए गए कथनों को पढ़ें और सही विकल्प चुनें:

कथन 1: रेडियो-कॉलर के माध्यम से फिशिंग कैट पर नज़र रखने की भारत की पहली पहल कोरिंगा वन्यजीव अभयारण्य में शुरू की गई है।

कथन 2: फिशिंग कैट मुख्य रूप से तटीय आर्द्रभूमि और मैंग्रोव पारिस्थितिकी तंत्र में पाई जाती हैं।

Both Statements 1 and 2 are correct

कथन 1 और 2 दोनों सही हैं

Neither Statement 1 nor 2 is correct

न तो कथन 1 और न ही 2 सही है

Only Statement 1 is correct

केवल कथन 1 सही है

Only Statement 2 is correct

केवल कथन 2 सही है

Not Answered

Q.No: 73 Which economic consequence of migration is generally considered a challenge for the destination regions in India, particularly concerning unskilled rural migrants?

प्रवासन का कौन सा आर्थिक परिणाम आम तौर पर भारत में गंतव्य क्षेत्रों के लिए एक चुनौती माना जाता है, विशेष रूप से अकुशल ग्रामीण प्रवासियों के संबंध में?

Increased per capita income due to the inflow of highly skilled labor

अत्यधिक कुशल श्रम के प्रवाह के कारण प्रति व्यक्ति आय में वृद्धि

Reduction in pressure on land resources and unemployment rates

भूमि संसाधनों और बेरोजगारी दर पर दबाव में कमी

Exploitation of migrant labor and the growth of informal sector employment

प्रवासी श्रमिकों का शोषण और अनौपचारिक क्षेत्र में रोजगार की वृद्धि

Balanced regional development across states

राज्यों में संतुलित क्षेत्रीय विकास

Q.No: 74 Under Section 25(1) of the Bharatiya Nagarik Suraksha Sanhita, 2023, what may the Court do when a person is convicted in one trial for multiple offences?

भारतीय नागरिक सुरक्षा संहिता, 2023 की धारा 25(1) के तहत, जब किसी व्यक्ति को एक ही मुकदमे में कई अपराधों के लिए दोषी ठहराया जाता है, तो न्यायालय क्या कर सकता है?

Can impose only one punishment for all the offences, regardless of their nature

सभी अपराधों के लिए, चाहे उनकी प्रकृति कुछ भी हो, केवल एक ही सजा लागू की जा सकती है

Must give the harshest punishment only and remit other punishments altogether

केवल कठोरतम दंड देना चाहिए तथा अन्य दंडों को पूरी तरह माफ कर देना चाहिए

Shall suspend all sentences unless directed by a higher court in the same trial

जब तक उसी मुकदमे में उच्च न्यायालय द्वारा निर्देश न दिया जाए, तब तक सभी सजाओं को निलंबित कर दिया जाएगा

May impose punishments to run either concurrently or consecutively as appropriate

उपयुक्त होने पर एक साथ या लगातार दंड लागू किया जा सकता है

Q.No: 75 Which of the following is the central objective of Saksham Anganwadi and Poshan 2.0 scheme?

निम्नलिखित में से कौन सा सक्षम आंगनवाड़ी और पोषण 2.0 योजना का केंद्रीय उद्देश्य है?

Strengthening early childhood care and nutrition delivery systems

प्रारंभिक बाल्यावस्था देखभाल और पोषण वितरण प्रणालियों को सुदृढ़ बनाना

Food security through MSP

एमएसपी के माध्यम से खाद्य सुरक्षा

Urban health surveillance

शहरी स्वास्थ्य निगरानी

Providing skill-based employment

कौशल-आधारित रोजगार प्रदान करना

Q.No: 76 Which of the following festivals is celebrated by the tribal communities of Nagaland and showcases traditional dance and music?

निम्नलिखित में से कौन-सा पर्व नागालैंड की जनजातीय समुदायों द्वारा मनाया जाता है और पारंपरिक नृत्य एवं संगीत का प्रदर्शन करता है?
Ugadi
उगादि
Ornbill Festival
हॉर्नबिल महोत्सव
Teej
तीज
Onam
ओणम

Q.No: 77	The power to legislate on 'Residuary Subjects' (matters not enumerated in any of the three Lists) rests exclusively with: 'अवशिष्ट विषयों' (वे विषय जो संविधान की तीनों सूचियों में शामिल नहीं हैं) पर कानून बनाने की शक्ति विशेष रूप से किसके पास होती है?
The President of India	
भारत के राष्ट्रपति	
Parliament	
संसद	
The Supreme Court	
सर्वोच्च न्यायालय	
State Legislatures	
राज्य विधानसभाएँ	

Q.No: 78	Which of the following pairs of newly created States/Union Territories after the States Reorganisation Act, 1956 is correctly matched ? राज्य पुनर्गठन अधिनियम, 1956 के बाद नव निर्मित राज्यों/केंद्र शासित प्रदेशों के निम्नलिखित युग्मों में से कौन सा युग्म सही सुमेलित है?
Jharkhand – 2001	
झारखंड – 2001	
Uttarakhand – 1998	
उत्तराखंड – 1998	
Chhattisgarh – 2000	
छत्तीसगढ़ – 2000	
Telangana – 2001	
तेलंगाना – 2001	

Q.No: 79	Arrange the following Fundamental Rights in the order of their appearance in the Constitution: 1. Right to Freedom 2. Right to Equality 3. Right to Freedom of Religion 4. Right against Exploitation निम्नलिखित मौलिक अधिकारों को संविधान में उनके स्थान के क्रम में व्यवस्थित कीजिए: 1. स्वतंत्रता का अधिकार 2. समानता का अधिकार 3. धार्मिक स्वतंत्रता का अधिकार 4. शोषण के विरुद्ध अधिकार
1-2-3-4	
1-2-3-4	
2-1-4-3	
2-1-4-3	
2-4-1-3	
2-4-1-3	
4-2-1-3	
4-2-1-3	

Q.No: 80	<p>Read the following and choose the correct option:</p> <p>Assertion (A): Sound waves travel faster in steel than in air at the same temperature.</p> <p>Reason (R): The particles in solids (like steel) are more closely packed and experience stronger intermolecular forces compared to particles in gases (like air), allowing vibrations to be transmitted more efficiently and rapidly.</p> <p>निम्नलिखित को पढ़ें और सही विकल्प चुनें:</p> <p>अभिकथन (A): ध्वनि तरंगें समान तापमान पर स्टील में वायु की तुलना में अधिक तेज़ी से चलती हैं।</p> <p>कारण (R): ठोस पदार्थों (जैसे स्टील) के कण गैसों (जैसे वायु) के कणों की तुलना में अधिक सघन होते हैं और अधिक प्रबल अंतर-आणविक बलों का अनुभव करते हैं, जिससे कंपन अधिक कुशलतापूर्वक और तेज़ी से संचरित होते हैं।</p> <p>A is false but R is true.</p> <p>A असत्य है लेकिन R सत्य है।</p> <p>Both A and R are true and R is the correct explanation of A.</p> <p>A और R दोनों सत्य हैं और R, A का सही स्पष्टीकरण है।</p> <p>Both A and R are true but R is not the correct explanation of A.</p> <p>A और R दोनों सत्य हैं लेकिन R, A का सही स्पष्टीकरण नहीं है।</p> <p>A is true but R is false.</p> <p>A सत्य है लेकिन R असत्य है।</p>
----------	---

Q.No: 81	<p>Who set up a Dayanand Anglo Vedic school in Lahore?</p> <p>लाहौर में दयानंद एंग्लो वैदिक स्कूल की स्थापना किसने की?</p> <p>Lala Lajpat Rai</p> <p>लाला लाजपत राय</p> <p>Bipin Chandrapal</p> <p>बिपिन चंद्रपाल</p> <p>Dayanand Saraswati</p> <p>दयानंद सरस्वती</p> <p>Balgangadhar Tilak</p> <p>बालगंगाधर तिलक</p> <p>Not Answered</p>
----------	---

Q.No: 82	<p>Which of the following was a major criticism of the industrial policy followed in India during 1950-1990?</p> <p>निम्नलिखित में से कौन सी 1950-1990 के दौरान भारत में अपनाई गई औद्योगिक नीति की प्रमुख आलोचना थी?</p> <p>Too much emphasis on exports.</p> <p>निर्यात पर बहुत ज्यादा जोर।</p> <p>Creation of a protected market leading to inefficiency and lack of innovation.</p> <p>संरक्षित बाजार के निर्माण से अकुशलता और नवाचार की कमी पैदा होना।</p> <p>Excessive competition among domestic industries.</p> <p>घरेलू उद्योगों के बीच अत्यधिक प्रतिस्पर्धा।</p> <p>Neglect of the public sector.</p> <p>सार्वजनिक क्षेत्र की उपेक्षा।</p> <p>Not Answered</p>
----------	---

Q.No: 83	<p>The Jog Falls in Karnataka is formed from which river?</p> <p>कर्नाटक में स्थित जोग जलप्रपात किस नदी पर बना है?</p> <p>Godavari</p> <p>गोदावरी</p> <p>Kaveri</p> <p>कावेरी</p> <p>Sharavathi</p> <p>शरावती</p> <p>Krishna</p> <p>कृष्णा नदी</p>
----------	--

Q.No: 84	What kind of approach does the Happiness Index encourage in governance? हैप्पीनेस इंडेक्स शासन प्रणाली में किस प्रकार की दृष्टिकोण को बढ़ावा देता है?
Legalistic	
कानूनी रूढ़िवादिता	
Citizen-centric	
नागरिक-केंद्रित दृष्टिकोण	
Resource-based	
संसाधन आधारित	
Militaristic	
सैन्यवादी	
Not Answered	

Q.No: 85	Who was the Home Minister in the first cabinet of free India? स्वतंत्र भारत के प्रथम कैबिनेट में गृह मंत्री कौन थे?
Dr. Rajendra Prasad	
डॉ. राजेंद्र प्रसाद	
Rajagopalachari	
राजगोपालाचारी	
Maulana Abul Kalam Azad	
मौलाना अबुल कलाम आज़ाद	
Sardar Vallabhbhai Patel	
सरदार वल्लभभाई पटेल	

Q.No: 86	Which Indian state does S. Jaishankar represent in the Rajya Sabha? एस. जयशंकर राज्यसभा में किस भारतीय राज्य का प्रतिनिधित्व करते हैं?
Maharashtra	
महाराष्ट्र	
Gujarat	
गुजरात	
Uttar Pradesh	
उत्तर प्रदेश	
Tamil Nadu	
तमिलनाडु	

Q.No: 87	Which act replaces the Code of Criminal Procedure, 1973? कौन सा अधिनियम दंड प्रक्रिया संहिता, 1973 का स्थान लेता है?
Bharatiya Nagarik Suraksha Sanhita	
भारतीय नागरिक सुरक्षा संहिता	
Bharatiya Nyaya Sanhita	
भारतीय न्याय संहिता	
None of the above	
इनमें से कोई भी नहीं	
Bharatiya Sakshya Adhinyam	
भारतीय साक्ष्य अधिनियम	

Q.No: 88	Which of the following best describes the goal of stem cell therapy in modern medicine? निम्नलिखित में से कौन-सा विकल्प आधुनिक चिकित्सा में स्टेम सेल थेरेपी के उद्देश्य का सर्वोत्तम वर्णन करता है?
To provide genetic immunity against viruses	
वायरसों के विरुद्ध आनुवंशिक प्रतिरक्षा प्रदान करना	
To prevent blood clotting in arteries	
धमनियों में रक्त के थक्के बनने से रोकना	

To replace or regenerate damaged tissues or organs

क्षतिग्रस्त ऊतकों या अंगों को प्रतिस्थापित या पुनर्जनित करना

To stimulate hormonal glands

हार्मोन ग्रंथियों को उत्तेजित करना

Not Answered

Q.No: 89 The first known rules of Kabaddi were framed in which Indian state?

कबड्डी के सर्वप्रथम ज्ञात नियम किस भारतीय राज्य में बनाये गये थे?

Tamil Nadu

तमिलनाडु

Uttar Pradesh

उत्तर प्रदेश

Punjab

पंजाब

Maharashtra

महाराष्ट्र

Not Answered

Q.No: 90 Match the Mahajanapada with its capital:

Column A: Mahajanapada

Column B: Capital

1. Vatsa

a. Kaushambi

2. Magadha

b. Rajagriha

3. Kuru

c. Ujjayini

4. Avanti

d. Indraprastha

महाजनपद का उसकी राजधानी से मिलान करें:

कॉलम A: महाजनपद

कॉलम B: पूंजी

1. वत्स

a. कौशांबी

2. मगध

b. राजगृह

3. कुरु

c. उज्जयिनी

4. अवन्ती

d. इन्द्रप्रस्थ

1-a, 2-b, 3-d, 4-c

1-a, 2-b, 3-d, 4-c

1-b, 2-a, 3-c, 4-d

1-b, 2-a, 3-c, 4-d

1-c, 2-d, 3-a, 4-b

1-c, 2-d, 3-a, 4-b

1-d, 2-c, 3-b, 4-a

1-d, 2-c, 3-b, 4-a

Q.No: 91 Which of the following **correctly** pairs the initiative with its primary objective from India's viewpoint?

निम्नलिखित में से कौन सा भारत के दृष्टिकोण से पहल को उसके प्राथमिक उद्देश्य के साथ **सही** ढंग से जोड़ता है?

Chabahar Port – Access Central Asia via Iran

चाबहार बंदरगाह - ईरान के रास्ते मध्य एशिया तक पहुँच

BIMSTEC – Land connectivity to Europe

बिम्सटेक - यूरोप से भूमि संपर्क

QUAD – Strengthening oil diplomacy in Gulf

क्वाड(QUAD) - खाड़ी में तेल कूटनीति को मजबूत करना

IMEC – Maritime security in South China Sea

आईएमईसी - दक्षिण चीन सागर में समुद्री सुरक्षा

Q.No: 92 Which feature is not commonly associated with French colonial architecture in India?

फ्रांसीसी औपनिवेशिक वास्तुकला से सामान्यतः कौन-सा तत्व संबद्ध नहीं होता?

Wide verandas

चौड़ी बरामदे

Tall doors and windows

ऊँचे दरवाज़े और खिड़कियाँ

Sloped tiled roofs

ढलान वाली टाइल की छतें

Ornate Mughal domes

मुगल शैली के अलंकरणयुक्त गुंबद

Not Answered

Q.No: 93 Initially, when the 'Constitution of India' was adopted on 26th November 1949, how many Articles and Schedules did it originally contain?

प्रारंभ में, जब 26 नवंबर 1949 को 'भारत का संविधान' अपनाया गया था, तो इसमें मूल रूप से कितने अनुच्छेद और अनुसूचियाँ थीं?

284 Articles and 8 Schedules

284 अनुच्छेद और 8 अनुसूचियाँ

395 Articles and 12 Schedules

395 अनुच्छेद और 12 अनुसूचियाँ

395 Articles and 8 Schedules

395 अनुच्छेद और 8 अनुसूचियाँ

444 Articles and 12 Schedules

444 अनुच्छेद और 12 अनुसूचियाँ

Q.No: 94 'The provision for 'Oath or Affirmation' by members of the legislature is mentioned in which Schedule of the Indian Constitution?

विधानमंडल के सदस्यों द्वारा 'शपथ या प्रतिज्ञान' का प्रावधान भारतीय संविधान की किस अनुसूची में उल्लिखित है?

Second Schedule

दूसरी अनुसूची

Fourth Schedule

चौथी अनुसूची

Fifth Schedule

पांचवीं अनुसूची

Third Schedule

तीसरी अनुसूची

Q.No: 95 Match the columns:

Column A (Cropping Season)	Column B (Major Crops – Shuffled)
A. Kharif (June–September)	1. Vegetables, Fruits, Fodder
B. Rabi (October–March)	2. Rice, Cotton, Bajra, Maize, Jowar, Tur
C. Zaid (April–June)	3. Wheat, Gram, Rapeseeds and Mustard, Barley

स्तंभों का मिलान करें:

स्तंभ A (फसल का मौसम)	स्तंभ B (प्रमुख फसलें – फेरबदल)
A. खरीफ (जून-सितंबर)	1. सब्जियां, फल, चारा
B. रबी (अक्टूबर-मार्च)	2. चावल, कपास, बाजरा, मक्का, ज्वार, अरहर
C. जायद (अप्रैल-जून)	3. गेहूं, चना, रेपसीड और सरसों, जौ

A-3, B-2, C-1

A-3, B-2, C-1

A-2, B-1, C-3

A-2, B-1, C-3

A-1, B-2, C-3

A-1, B-2, C-3

A-2, B-3, C-1

A-2, B-3, C-1

Q.No: 96 With reference to the Indian Councils Act, 1892, consider the following statements and choose the correct option:

1. It significantly increased the number of official members in the Central Legislative Council.
2. It empowered the legislative councils to discuss the budget and address questions to the executive.
3. It introduced the principle of direct election for non-official members of provincial legislative councils.

भारतीय परिषद अधिनियम, 1892 के संदर्भ में, निम्नलिखित कथनों पर विचार कीजिए और सही विकल्प चुनिए:

1. इसने केंद्रीय विधान परिषद में सरकारी सदस्यों की संख्या में उल्लेखनीय वृद्धि की।
2. इसने विधान परिषदों को बजट पर चर्चा करने और कार्यपालिका से प्रश्न पूछने का अधिकार दिया।
3. इसने प्रांतीय विधान परिषदों के गैर-सरकारी सदस्यों के लिए प्रत्यक्ष चुनाव का सिद्धांत प्रस्तुत किया।

1 only

केवल 1

2 only

केवल 2

1 and 3 only

केवल 1 और 3

2 and 3 only

केवल 2 और 3

Not Answered

Q.No: 97 What does 'repo rate' refer to in India's monetary policy?

भारत की मौद्रिक नीति में 'रेपो दर' (Repo Rate) का क्या अर्थ है?

Rate of foreign exchange transactions

विदेशी मुद्रा विनिमय दर

Rate at which the government borrows from banks

वह दर जिस पर सरकार बैंकों से उधार लेती है

Rate at which consumers take loans

उपभोक्ताओं द्वारा ऋण लेने की दर

Rate at which commercial banks borrow from the RBI

वह दर जिस पर वाणिज्यिक बैंक आरबीआई से उधार लेते हैं

Q.No: 98 What is a unique feature of the AstroSat mission operated by ISRO?

इसरो द्वारा संचालित एस्ट्रोसैट मिशन की अनूठी विशेषता क्या है?

Simultaneous multi-wavelength observations

एक साथ बहु-तरंगदैर्घ्य अवलोकन

Optical observations only

केवल ऑप्टिकल अवलोकन

X-ray observations only

केवल एक्स-रे अवलोकन

Single -wavelength observations

एकल-तरंगदैर्घ्य अवलोकन

Not Answered

Q.No: 99 Consider the following two statements, labeled Assertion (A) and Reason (R). Evaluate them and choose the appropriate answer from the given options.

Assertion (A): The standard distance between the penalty spot and the goal line on a football field is 11 meters.

Reason (R): This distance allows the goalkeeper a fair reaction time while challenging the accuracy and confidence of the penalty taker.

अभिकथन (A) और कारण (R) से चिह्नित निम्नलिखित दो कथनों पर विचार करें। उनका मूल्यांकन करें और दिए गए विकल्पों में से उचित उत्तर चुनें।

अभिकथन (A): फुटबॉल मैदान पर पेनल्टी स्पॉट और गोल लाइन के बीच मानक दूरी 11 मीटर है।

कारण (R): यह दूरी गोलकीपर को उचित प्रतिक्रिया समय देती है जबकि पेनल्टी लेने वाले की सटीकता और आत्मविश्वास को चुनौती देती है।

A is false, but R is true.

A असत्य है, लेकिन R सत्य है।

A is true, but R is false.

A सत्य है, लेकिन R असत्य है।

Both A and R are true, and R is the correct explanation of A.

A और R दोनों सत्य हैं, तथा R, A का सही स्पष्टीकरण है।

Both A and R are true, but R is not the correct explanation of A.

A और R दोनों सत्य हैं, लेकिन R, A का सही स्पष्टीकरण नहीं है।

Not Answered

Q.No: 100 Which of the following accurately describes The Seven Moons of Maali Almeida, winner of the 2022 Booker Prize?

1.The novel is set during the civil war in Sri Lanka and explores the afterlife of a photojournalist.

2.It is a non-fictional account of archaeological excavations in the Gandhara region.

3.The author, Shehan Karunatilaka, uses satire and ghosts to comment on violence, memory, and political trauma.

निम्नलिखित में से कौन सा 2022 बुकर पुरस्कार विजेता माली अल्मेडा के सात चंद्रमाओं का सटीक वर्णन करता है?

1. यह उपन्यास श्रीलंका में गृहयुद्ध के दौरान की पृष्ठभूमि पर आधारित है और एक फोटो पत्रकार के परलोक की पड़ताल करता है।

2. यह गांधार क्षेत्र में पुरातात्विक उत्खनन का एक गैर-काल्पनिक वृत्तान्त है।

3. लेखक, शेहान करुणातिलका, हिंसा, स्मृति और राजनीतिक आघात पर टिप्पणी करने के लिए व्यंग्य और भूतों का उपयोग करते हैं।

2 and 3 only

केवल 2 और 3

1 and 3 only

केवल 1 और 3

1 and 2 only

केवल 1 और 2

1, 2 and 3 all are correct

1, 2 और 3 सभी सही हैं

Not Answered

Q.No: 101	<p>In the following question, the first and the last parts of the sentence/passage are numbered 1 and 6. The rest of the sentence/passage is split into four parts — P, Q, R, and S. These four parts are not given in their proper order. Read the sentence/passage and find the most logical order of the parts between 1 and 6.</p> <p>An astronaut must train before going to space. P. They use a simulator to practice. Q. Their body must get used to zero gravity. R. They learn emergency procedures. S. They also learn how to wear the space suit. All this helps them prepare well.</p>
RPSQ	
QSPR	
PRSQ	
SQRP	

Q.No: 102	<p>Read the following passage carefully and answer the questions that follow by selecting the most appropriate option from the given alternatives.</p> <p>In today's digital age, convenience often comes at the cost of privacy. Every time a user browses a website, clicks a link, or uses an app, their data is collected—sometimes without their knowledge. Companies use this information to target ads, predict behavior, or even sell insights to third parties. While this can lead to better services, it also raises ethical concerns. Who controls this data? How is it stored, and can users truly opt out? Many people accept terms and conditions without reading them, unknowingly giving permission for data tracking. Some countries have passed laws to protect user data, but implementation remains weak. As surveillance tools grow smarter, the line between public and private becomes blurred. Individuals must now learn to balance the benefits of technology with the right to privacy—a task that requires awareness, regulation, and responsible digital behavior.</p> <p>What is the main concern raised in the passage?</p>
Lack of internet speed	
High cost of mobile data	
Threats to digital privacy	
Overuse of technology	

Q.No: 103	<p>Read the following passage carefully and answer the questions that follow by selecting the most appropriate option from the given alternatives.</p> <p>In today's digital age, convenience often comes at the cost of privacy. Every time a user browses a website, clicks a link, or uses an app, their data is collected—sometimes without their knowledge. Companies use this information to target ads, predict behavior, or even sell insights to third parties. While this can lead to better services, it also raises ethical concerns. Who controls this data? How is it stored, and can users truly opt out? Many people accept terms and conditions without reading them, unknowingly giving permission for data tracking. Some countries have passed laws to protect user data, but implementation remains weak. As surveillance tools grow smarter, the line between public and private becomes blurred. Individuals must now learn to balance the benefits of technology with the right to privacy—a task that requires awareness, regulation, and responsible digital behavior.</p> <p>According to the passage, how is user data often collected?</p>
Only with government approval	
Through printed forms	
Without users being fully aware	
After signing hardcopy documents	

Q.No: 104	<p>Read the following passage carefully and answer the questions that follow by selecting the most appropriate option from the given alternatives.</p> <p>In today's digital age, convenience often comes at the cost of privacy. Every time a user browses a website, clicks a link, or uses an app, their data is collected—sometimes without their knowledge. Companies use this information to target ads, predict behavior, or even sell insights to third parties. While this can lead to better services, it also raises ethical concerns. Who controls this data? How is it stored, and can users truly opt out? Many people accept terms and conditions without reading them, unknowingly giving permission for data tracking. Some countries have passed laws to protect user data, but implementation remains weak. As surveillance tools grow smarter, the line between public and private becomes blurred. Individuals must now learn to balance the benefits of technology with the right to privacy—a task that requires awareness, regulation, and responsible digital behavior.</p> <p>What does the passage say about laws protecting data?</p>
They are strong and global	
They are strict in all countries	
They exist but are poorly enforced	
They are unnecessary	

Q.No: 105	<p>Read the following passage carefully and answer the questions that follow by selecting the most appropriate option from the given alternatives.</p> <p>In today's digital age, convenience often comes at the cost of privacy. Every time a user browses a website, clicks a link, or uses an app, their data is collected—sometimes without their knowledge. Companies use this information to target ads, predict behavior, or even sell insights to third parties. While this can lead to better services, it also raises ethical concerns. Who controls this data? How is it stored, and can users truly opt out? Many people accept terms and conditions without reading them, unknowingly giving permission for data tracking. Some countries have passed laws to protect user data, but implementation remains weak. As surveillance tools grow smarter, the line between public and private becomes blurred. Individuals must now learn to balance the benefits of technology with the right to privacy—a task that requires awareness, regulation, and responsible digital behavior.</p> <p>What is one positive use of user data mentioned in the passage?</p>
Reducing screen time	
Improving service experiences	
Blocking global access	
Avoiding social media	

Q.No: 106	<p>Read the following passage carefully and answer the questions that follow by selecting the most appropriate option from the given alternatives.</p> <p>In today's digital age, convenience often comes at the cost of privacy. Every time a user browses a website, clicks a link, or uses an app, their data is collected—sometimes without their knowledge. Companies use this information to target ads, predict behavior, or even sell insights to third parties. While this can lead to better services, it also raises ethical concerns. Who controls this data? How is it stored, and can users truly opt out? Many people accept terms and conditions without reading them, unknowingly giving permission for data tracking. Some countries have passed laws to protect user data, but implementation remains weak. As surveillance tools grow smarter, the line between public and private becomes blurred. Individuals must now learn to balance the benefits of technology with the right to privacy—a task that requires awareness, regulation, and responsible digital behavior.</p> <p>What does the author suggest is needed to protect privacy?</p>
Avoiding all apps	
Stronger surveillance tools	
Awareness and responsible behavior	
Free mobile phones for all	

Q.No: 107	<p>Read the following passage carefully and answer the questions that follow by selecting the most appropriate option from the given alternatives.</p> <p>Artificial Intelligence (AI) is gradually transforming the way students learn. From virtual tutors to personalized learning paths, AI helps identify each learner's strengths and weaknesses. With the help of data, AI systems can suggest specific topics where students need improvement. Schools are also using AI chatbots to answer basic queries, reducing the pressure on teachers. However, experts warn that over-dependence on AI may limit critical thinking. If students rely too much on machines for answers, they may lose problem-solving skills. There are also concerns about data privacy, especially when student performance data is stored online. Despite these issues, many educators believe AI can be a useful tool when used wisely. Like any technology, the key lies in balancing human guidance with machine efficiency.</p> <p>What does AI mainly help with in education?</p>
Giving marks	
Personalizing learning	
Hiring teachers	
Fixing school buildings	

Q.No: 108	<p>Read the following passage carefully and answer the questions that follow by selecting the most appropriate option from the given alternatives.</p> <p>Artificial Intelligence (AI) is gradually transforming the way students learn. From virtual tutors to personalized learning paths, AI helps identify each learner's strengths and weaknesses. With the help of data, AI systems can suggest specific topics where students need improvement. Schools are also using AI chatbots to answer basic queries, reducing the pressure on teachers. However, experts warn that over-dependence on AI may limit critical thinking. If students rely too much on machines for answers, they may lose problem-solving skills. There are also concerns about data privacy, especially when student performance data is stored online. Despite these issues, many educators believe AI can be a useful tool when used wisely. Like any technology, the key lies in balancing human guidance with machine efficiency.</p> <p>What is a possible risk of overusing AI?</p>
Higher costs	
Fewer classrooms	
Poor thinking skills	
Better results	

Q.No: 109	<p>Read the following passage carefully and answer the questions that follow by selecting the most appropriate option from the given alternatives.</p> <p>Artificial Intelligence (AI) is gradually transforming the way students learn. From virtual tutors to personalized learning paths, AI helps identify each learner's strengths and weaknesses. With the help of data, AI systems can suggest specific topics where students need improvement. Schools are also using AI chatbots to answer basic queries, reducing the pressure on teachers. However, experts warn that over-dependence on AI may limit critical thinking. If students rely too much on machines for answers, they may lose problem-solving skills. There are also concerns about data privacy, especially when student performance data is stored online. Despite these issues, many educators believe AI can be a useful tool when used wisely. Like any technology, the key lies in balancing human guidance with machine efficiency.</p> <p>Why are AI chatbots used in schools?</p>
To monitor cameras	
To take exams	
To answer student questions	
To conduct interviews	

Q.No: 110	<p>Read the following passage carefully and answer the questions that follow by selecting the most appropriate option from the given alternatives.</p> <p>Artificial Intelligence (AI) is gradually transforming the way students learn. From virtual tutors to personalized learning paths, AI helps identify each learner's strengths and weaknesses. With the help of data, AI systems can suggest specific topics where students need improvement. Schools are also using AI chatbots to answer basic queries, reducing the pressure on teachers. However, experts warn that over-dependence on AI may limit critical thinking. If students rely too much on machines for answers, they may lose problem-solving skills. There are also concerns about data privacy, especially when student performance data is stored online. Despite these issues, many educators believe AI can be a useful tool when used wisely. Like any technology, the key lies in balancing human guidance with machine efficiency.</p> <p>What is a concern related to student data?</p>
Attendance drops	
Internet speed	
Data privacy	
Exam cheating	

Q.No: 111	<p>Read the following passage carefully and answer the questions that follow by selecting the most appropriate option from the given alternatives.</p> <p>Artificial Intelligence (AI) is gradually transforming the way students learn. From virtual tutors to personalized learning paths, AI helps identify each learner's strengths and weaknesses. With the help of data, AI systems can suggest specific topics where students need improvement. Schools are also using AI chatbots to answer basic queries, reducing the pressure on teachers. However, experts warn that over-dependence on AI may limit critical thinking. If students rely too much on machines for answers, they may lose problem-solving skills. There are also concerns about data privacy, especially when student performance data is stored online. Despite these issues, many educators believe AI can be a useful tool when used wisely. Like any technology, the key lies in balancing human guidance with machine efficiency.</p> <p>What is the author's final advice?</p>
Replace teachers	
Use only AI	
Balance tech and human input	
Avoid all AI	

Q.No: 112	<p>In the following passage, some words have been omitted. Read the passage carefully and choose the most appropriate option from the given alternatives to fill in each blank. Mark your answer for each question.</p> <p>Social media has become an important part of modern life, especially among young people. It allows them to connect, share ideas, and express themselves freely. However, this freedom also brings challenges. Many teenagers feel pressure to look perfect or appear popular online. They often compare their lives to others, which can affect their self-confidence. Experts suggest that it's important to build a healthy (1)_____ toward social media. Instead of trying to copy others, young users should focus on their real-life goals and (2)_____. Parents and schools also have a role to play by teaching students how to use digital tools (3)_____. Setting screen-time limits and encouraging outdoor activities can help restore a sense of balance. In the end, technology should be a tool for growth, not a source of (4)_____. By using social media wisely, young people can turn it into a space of learning, (5)_____ and real connection.</p> <p>(1)</p>
attitude	
habit	
relationship	
thought	

Q.No: 113	<p>In the following passage, some words have been omitted. Read the passage carefully and choose the most appropriate option from the given alternatives to fill in each blank. Mark your answer for each question.</p> <p>Social media has become an important part of modern life, especially among young people. It allows them to connect, share ideas, and express themselves freely. However, this freedom also brings challenges. Many teenagers feel pressure to look perfect or appear popular online. They often compare their lives to others, which can affect their self-confidence. Experts suggest that it's important to build a healthy (1)_____ toward social media. Instead of trying to copy others, young users should focus on their real-life goals and (2)_____. Parents and schools also have a role to play by teaching students how to use digital tools (3)_____. Setting screen-time limits and encouraging outdoor activities can help restore a sense of balance. In the end, technology should be a tool for growth, not a source of (4)_____. By using social media wisely, young people can turn it into a space of learning, (5)_____ and real connection.</p> <p>(2</p>
wishes	
schedules	
priorities	
dreams	

Q.No: 114	<p>In the following passage, some words have been omitted. Read the passage carefully and choose the most appropriate option from the given alternatives to fill in each blank. Mark your answer for each question.</p> <p>Social media has become an important part of modern life, especially among young people. It allows them to connect, share ideas, and express themselves freely. However, this freedom also brings challenges. Many teenagers feel pressure to look perfect or appear popular online. They often compare their lives to others, which can affect their self-confidence. Experts suggest that it's important to build a healthy (1)_____ toward social media. Instead of trying to copy others, young users should focus on their real-life goals and (2)_____. Parents and schools also have a role to play by teaching students how to use digital tools (3)_____. Setting screen-time limits and encouraging outdoor activities can help restore a sense of balance. In the end, technology should be a tool for growth, not a source of (4)_____. By using social media wisely, young people can turn it into a space of learning, (5)_____ and real connection.</p> <p>(3)</p>
widely	
safely	
effectively	
blindly	

Q.No: 115	<p>In the following passage, some words have been omitted. Read the passage carefully and choose the most appropriate option from the given alternatives to fill in each blank. Mark your answer for each question.</p> <p>Social media has become an important part of modern life, especially among young people. It allows them to connect, share ideas, and express themselves freely. However, this freedom also brings challenges. Many teenagers feel pressure to look perfect or appear popular online. They often compare their lives to others, which can affect their self-confidence. Experts suggest that it's important to build a healthy (1)_____ toward social media. Instead of trying to copy others, young users should focus on their real-life goals and (2)_____. Parents and schools also have a role to play by teaching students how to use digital tools (3)_____. Setting screen-time limits and encouraging outdoor activities can help restore a sense of balance. In the end, technology should be a tool for growth, not a source of (4)_____. By using social media wisely, young people can turn it into a space of learning, (5)_____ and real connection.</p> <p>(4)</p>
fun	
distraction	
stress	
failure	

Q.No: 116	<p>In the following passage, some words have been omitted. Read the passage carefully and choose the most appropriate option from the given alternatives to fill in each blank. Mark your answer for each question.</p> <p>Social media has become an important part of modern life, especially among young people. It allows them to connect, share ideas, and express themselves freely. However, this freedom also brings challenges. Many teenagers feel pressure to look perfect or appear popular online. They often compare their lives to others, which can affect their self-confidence. Experts suggest that it's important to build a healthy (1)_____ toward social media. Instead of trying to copy others, young users should focus on their real-life goals and (2)_____. Parents and schools also have a role to play by teaching students how to use digital tools (3)_____. Setting screen-time limits and encouraging outdoor activities can help restore a sense of balance. In the end, technology should be a tool for growth, not a source of (4)_____. By using social media wisely, young people can turn it into a space of learning, (5)_____ and real connection.</p> <p>(5)</p>
-----------	--

fame
growth
fun
creativity

Q.No: 117	Find the misspelt word.
Ubiquitous	
interference	
interrupt	
Ubiquitus	

Q.No: 118	Arrange the sentence parts: (A) water the plants (B) every morning (C) before breakfast (D) we
DCAB	
DACB	
DBCA	
DABC	

Q.No: 119	Select the most appropriate option to fill in the blank. She hasn't called me ___ Monday.
since	
for	
on	
at	

Q.No: 120	Select the synonym of Ubiquitous .
Isolated	
Omnipresent	
Rare	
Occasional	

Q.No: 121	What does the idiom 'Clutching at straws' mean?
-----------	---

Hoping without reason

Laughing loudly

Boasting unnecessarily

Winning easily

Q.No: 122 What does the idiom 'Sit on the fence' mean?

Take a risk

Remain silent

Stay neutral

Join both sides

Q.No: 123 Find the incorrect part of the sentence:
He as well as his brothers were present.

He as well as

his brothers

were present

No error

Q.No: 124 Pick the antonym of 'Yoke'.

Immoral

Vicious

Harness

Liberate

Q.No: 125 Select the most appropriate option to improve the bold part of the sentence.
The fiction and non fictional book, **that I borrowed**, was interesting.

whom I borrowed

what I borrowed

whose I borrowed

which I borrowed

Q.No: 126 Choose the correct meaning of idiom:
'All at sea'

Far away

Excited

Confused

Drowning

Q.No: 127	In the following question, a sentence has been given in Indirect Speech. Choose the correct Direct Speech form. The astronomer noted that Jupiter's rotation was the fastest among all planets in the solar system.
	The astronomer noted, "Jupiter's rotation has been the fastest among all planets in the solar system."
	The astronomer noted, "Jupiter's rotation had been the fastest among all planets in the solar system."
	The astronomer noted, "Jupiter's rotation was the fastest among all planets in the solar system."
	The astronomer noted, "Jupiter's rotation is the fastest among all planets in the solar system."

Q.No: 128	Select the option that expresses the given sentence in Direct to Indirect Speech. He said, "May God bless you."
	He told that God should bless me.
	He said that God may bless me.
	He wished God bless me.
	He prayed that God might bless me.

Q.No: 129	Choose the option that completes the sentence using the correct spelling. It is my _____ that municipal employees handle their jobs with great professionalism.
	bilief
	beleif
	belief
	beleaf

Q.No: 130	Select the option that expresses the given sentence in Direct to Indirect Speech. She said, "I was tired."
	She said that she will be tired.
	She said that she was tired.
	She said that she is tired.
	She said that she had been tired.

Q.No: 131	Which word is closest in meaning to 'Allay'?
	Pacify
	Clash
	Noise
	Dispute

Q.No: 132	Arrange the sentence parts: (A) a scholarship (B) for higher studies (C) was awarded to (D) the topper
	DCAB
	DABC
	DACB

Q.No: 133 Select the option that expresses the given sentence in Direct Speech.
I told him that I was busy.

I told him, "You are busy."

I said, "I am busy."

I told him, "I was busy."

I told him, "I am busy."

Q.No: 134 Select the most appropriate option to fill in the blank.
The manager was dissatisfied ____ the poor attendance.

of

with

by

to

Q.No: 135 Select the option that expresses the given sentence in Direct Speech.
She said that she liked chocolate.

She said, "I liked chocolate."

She said, "I had liked chocolate."

She said, "I like chocolate."

She said, "She likes chocolate."

Q.No: 136 Select the option that expresses the given sentence in Direct to Indirect Speech.
They said, "Our teacher will explain the topic tomorrow."

They said that their teacher would explain the topic the next day.

They said that our teacher will explain the topic tomorrow.

They said that the teacher should explain the topic tomorrow.

They said that the teacher explained the topic the next day.

Q.No: 137 Rearrange the parts of this sentence:
(A) by adopting modern methods (B) farmers can increase (C) agricultural production (D) effectively

ABCD

BCAD

BADC

BACD

Q.No: 138 Identify the part containing a grammatical or structural error:
The number of applicants have increased this year.

The number of applicants

No error
this year
have increased

Q.No: 139	What does the idiom 'To go for a song' mean?
Be expensive	
Be unsold	
Be sold cheaply	
Be sung loudly	

Q.No: 140	What does the idiom 'To bell the cat' mean?
Take a risky initiative	
Feed a pet	
Escape a problem	
Make an easy move	

Q.No: 141	Select the most appropriate option to improve the bold part of the sentence. None of the option seems appropriate.
Any of the optionals	
No optionals	
No one of the	
None of the options	

Q.No: 142	Choose the one which can be substituted for the given sentence. One who abandons one's religious faith or principles
Apostate	
Heretic	
Infidel	
Pagan	

Q.No: 143	Which sentence contains a word that is spelled incorrectly?
The children were fasinated by the glowing fireflies in the dark.	
She was absolutely intrigued by the magician's clever tricks.	
The audience sat still, completely hypnotized by the performance.	
He explained the experiment in a way that was both clear and engaging .	

Q.No: 144	Select the correct active form of the given sentence: "The preliminary results have been officially announced by the matriculation board."
-----------	---

The matriculation board has officially announcing the preliminary results.

The matriculation board has officially announced the final results.

The matriculation board will has officially announced the preliminary results.

The matriculation board has officially announced the preliminary results.

Q.No: 145 Select the most appropriate homonym.
The police seized the counterfeit **notes**.

Letters

Music

Currency

Messages

Q.No: 146 Select the most appropriate homonym.
She went to the **court** to file a case.

Ground

Law place

Yard

Field

Q.No: 147 In the following question, the first and the last parts of the sentence/passage are numbered 1 and 6. The rest of the sentence/passage is split into four parts — P, Q, R, and S. These four parts are not given in their proper order. Read the sentence/passage and find the most logical order of the parts between 1 and 6.

A stray dog entered the school gate. P: The children ran away in fear. Q: It started barking loudly. R: A peon chased it away. S: Some teachers came out of the staff room. 6. Order was soon restored.

PSRQ

QPSR

QSPR

PQSR

Q.No: 148 Select the most appropriate option to improve the bold part of the sentence.
She gave me many **informations**.

many pieces of information

lots of knowledge

several data

much information

Q.No: 149 Transform the following sentence into active voice:

The glass was broken.

No one broke the glass.

Someone broke the glass.

He broken the glass.

He broke the glass.

Q.No: 150 Select the most appropriate option to improve the bold part of the sentence.
He did not **knew** the answer.

knows

know

knowing

knews

Q.No: 151 Select the synonym of **Feeble**.

Robust

Strong

Sturdy

Weak

Q.No: 152 Rearrange the parts of this sentence:
(A) to improve road safety (B) stricter traffic rules (C) should be implemented (D) immediately

BCAD

CBAD

BACD

ABCD

Q.No: 153 Select the most appropriate option to improve the bold part of the sentence.
According to the teacher, the Earth is **revolving**.

spoke that the Earth is round

said that the Earth is round

the earth is round.

told that Earth was round

Q.No: 154 Arrange the sentence parts:
(A) I have never (B) seen such (C) a huge gathering (D) before today

ACBD

ABDC

BACD

ABCD

Q.No: 155 In the following question, a sentence has been given in Indirect Speech. Choose the correct Direct Speech form.

The explorer remarked that rarely had he seen such a breathtaking view in all his travels.

The explorer remarked, "I had rarely seen such a breathtaking view in all my travels."

The explorer remarked, "Rarely had I seen such a breathtaking view in all my travels."

The explorer remarked, "I rarely saw such a breathtaking view in all my travels."

The explorer remarked, "Rarely I had seen such a breathtaking view in all my travels."

Q.No: 156 In the following question, the first and the last parts of the sentence/passage are numbered 1 and 6. The rest of the sentence/passage is split into four parts — P, Q, R, and S. These four parts are not given in their proper order. Read the sentence/passage and find the most logical order of the parts between 1 and 6.

Books have always been a source of knowledge. P: They allow us to travel across time and space. Q: We learn about different cultures and civilizations. R: Stories in books fuel our imagination. S: From science to art, books cover every field. 6. Therefore, reading must be encouraged in youth.

SQPR

SRPQ

PRQS

PSQR

Q.No: 157 Select the most appropriate option to improve the bold part of the sentence.
He doesn't **go to shopping** as often as he used to.

seldom goes at shop

go shopping

rarely goes to purchase

is rarely going to shop

Q.No: 158 Choose the antonym of 'eloquent':

Inexpressive

Articulate

Fluent

Persuasive

Q.No: 159 In the following question, the first and the last parts of the sentence/passage are numbered 1 and 6. The rest of the sentence/passage is split into four parts — P, Q, R, and S. These four parts are not given in their proper order. Read the sentence/passage and find the most logical order of the parts between 1 and 6.

The classroom was silent. P: The teacher entered with a test sheet. Q: Everyone looked anxious. R: She distributed the papers. S: The exam was about to begin. 6. The students began writing.

PQRS

QSPR

QPSR

PSQR

Q.No: 160 Select the most appropriate option to fill in the blank.
He presides ____ all important meetings.

at

on
over
with

Q.No: 161	Select the most appropriate homonym. He was given a light punishment.
Heavy	
Dark	
Serious	
Mild	

Q.No: 162	Rearrange the parts of this sentence: (A) the country (B) was devastated (C) by a powerful cyclone (D) last month
ABCD	
BACD	
ABDC	
ACBD	

Q.No: 163	Select the synonym of Chronic .
Temporary	
Persistent	
Fresh	
Occasional	

Q.No: 164	Choose the antonym of 'prominent':
Obscure	
Renowned	
Eminent	
Conspicuous	

Q.No: 165	<p>In the following question, the first and the last parts of the sentence/passage are numbered 1 and 6. The rest of the sentence/passage is split into four parts — P, Q, R, and S. These four parts are not given in their proper order. Read the sentence/passage and find the most logical order of the parts between 1 and 6.</p> <p>The Earth is facing a serious environmental crisis. P: Forests are being cut down. Q: Oceans are filling with plastic. R: The air is becoming toxic. S: Climate change is accelerating. 6. We must act before it's too late.</p>
PQRS	
RQPS	
PRQS	
QPRS	

Q.No: 166	Select the correct passive form of the given sentence. "He had lost the keys before the meeting."
The keys had lost before the meeting.	
The keys has been lost.	
The keys had been lost by him before the meeting.	
The keys were lost by him.	

Q.No: 167	Select the correct passive form of the given sentence. "He helps the poor."
The poor are helped by him.	
The poor were helped by him.	
The poor had been helped.	
The poor have helped.	

Q.No: 168	Select the option that expresses the given sentence in Direct Speech. They said that they were enjoying the trip.
They said, "We enjoy the trip."	
They said, "We were enjoying the trip."	
They said, "We have enjoyed the trip."	
They said, "We are enjoying the trip."	

Q.No: 169	Select the most appropriate option to fill in the blank. She ___ to the market every morning.
go	
gone	
goes	
going	

Q.No: 170	Select the correct active form of the given sentence. "The damaged road will be repaired by the municipality."
The municipality will have begin repairing the damaged road.	
The municipality will beginning repairing the damaged road.	
The municipality is begin repairing the damaged road.	
The municipality will begin repairing the damaged road.	

Q.No: 171	Arrange the sentence parts: (A) took care of (B) her younger brother (C) while their parents (D) were away
ACBD	
BACD	
CBAD	

Q.No: 172 Choose the one which can be substituted for the given sentence.
Killing of one's mother

Fratricide

Patricide

Matricide

Homicide

Q.No: 173 Select the most appropriate option to fill in the blank.
She writes essays ____.

neat

neatest

neatly

neater

Q.No: 174 Select the most appropriate homonym.
The **current** situation is tense.

Running

Electric flow

Present

Modern

Q.No: 175 Select the correct passive form of the given sentence.
"Someone could have been using this password."

This password could have been being used.

This password could be used.

This password could have been used.

This password can be being used.

Q.No: 176 Choose the correct meaning of the idiom:
"The gift of the gab"

Habit of exaggerating stories

Power to make quick decisions

Ability to cook well

Talent for speaking fluently and persuasively

Q.No: 177	In the following question, the first and the last parts of the sentence/passage are numbered 1 and 6. The rest of the sentence/passage is split into four parts — P, Q, R, and S. These four parts are not given in their proper order. Read the sentence/passage and find the most logical order of the parts between 1 and 6. Oceans cover more than 70% of Earth's surface. P: Marine species are crucial for food chains. Q: But plastic waste threatens marine life. R: Oceans regulate global temperature and climate. S: They provide food and employment to millions. 6. Ocean conservation must be prioritized.
RSPQ	
SRPQ	
RQPS	
PRSQ	

Q.No: 178	Select the most appropriate option to improve the bold part of the sentence. He is enough rich to buy a car.
rich too much	
sufficiently rich	
too rich	
rich enough	

Q.No: 179	Choose the correct sequence to form a meaningful sentence: (A) the cat (B) sleeping (C) is (D) under the table
ABDC	
ADBC	
ACBD	
ADCB	

Q.No: 180	Choose the one which can be substituted for the given sentence. A place where dead bodies are kept temporarily
Dispensary	
Crematorium	
Graveyard	
Morgue	

Q.No: 181	Select the most appropriate option to fill in the blank. He is interested ____ learning foreign languages.
for	
in	
at	
to	

Q.No: 182	Transform the following sentence into active voice: How beautifully has the picture been drawn by the artist!
-----------	--

How beautifully has the artist been drawn by the picture!

How beautifully has the artist been drew the picture!

How beautifully has the artist drew the picture!

How beautifully has the artist drawn the picture!

Q.No: 183 Select the correct active form.
"Was the novel written by her?"

Was she writing the novel?

Is she writing the novel?

Did she write the novel?

Has she written the novel?

Q.No: 184 Choose the antonym of 'deliberate':

Calculated

Rash

Intentional

Cautious

Q.No: 185 Select the most appropriate option to fill in the blank.
She was intent ____ pursuing higher studies abroad.

on

to

for

by

Q.No: 186 Select the option that expresses the given sentence in Direct to Indirect Speech.
She said, "I must go now."

She said that she had to go then.

She said that she was going then.

She said that she must go now.

She said that she will go now.

Q.No: 187 Select the correct active form.
"The temple has been visited by thousands of pilgrims."

Thousands of pilgrims were visiting the temple.

Thousands of pilgrims have visited the temple.

Thousands of pilgrims are visiting the temple.

Thousands of pilgrims had visited the temple.

Q.No: 188	<p>In the following question, the first and the last parts of the sentence/passage are numbered 1 and 6. The rest of the sentence/passage is split into four parts — P, Q, R, and S. These four parts are not given in their proper order. Read the sentence/passage and find the most logical order of the parts between 1 and 6.</p> <p>Rainforests are essential for biodiversity. P: Trees store carbon and release oxygen. Q: They are home to countless species. R: Yet, deforestation threatens these ecosystems. S: Some plants even hold potential medical cures. 6. So, preserving rainforests is a global concern.</p>
QPSR	
QRSP	
SRPQ	
PQSR	

Q.No: 189	<p>Select the correct passive form of the given sentence.</p> <p>"She may have told them the truth."</p>
The truth may have told to them.	
The truth may have been told to them.	
The truth may told them.	
The truth has been told.	

Q.No: 190	<p>Select the option that expresses the given sentence in Direct to Indirect Speech.</p> <p>The teacher said, "Let him try on his own."</p>
The teacher said that he should let him try on his own.	
The teacher ordered him to try on his own.	
The teacher suggested that he try on his own.	
The teacher said that let him try on his own.	

Q.No: 191	<p>Select the option that expresses the given sentence in Direct Speech.</p> <p>She said that she was going to the market.</p>
She said, "I have gone to the market."	
She said, "I am going to the market."	
She said, "I will go to the market."	
She said, "I was going to the market."	

Q.No: 192	<p>Find the incorrect part of the sentence:</p> <p>She prevented me to enter the hall.</p>
me to enter	
the hall	
She prevented	
No error	

Q.No: 193	<p>What is the one-word substitution for the misappropriation of money?</p>
Fraud	

Extortion

Embezzlement

Bribery

Q.No: 194 Which word is spelled wrongly?

Harass

Government

Calender

Permanent

Q.No: 195 Choose the part of the sentence that contains an error:
The team were playing well.

No error

were playing

The team

well

Q.No: 196 Find the incorrect part of the sentence:
The thief was hung for his crimes.

hung

No error

The thief was

for his crimes

Q.No: 197 Choose the correctly spelt word:

Embillish

Imbellish

Embellish

Embelish

Q.No: 198 Which sentence contains a word that is spelled incorrectly?

His performance in the play was just **mediocre**.

She paid the **tuition** fee before the semester began.

They enjoyed a **peaceful** evening by the lake.

The view from the mountaintop was tramendous.

Q.No: 199 Select the most appropriate option to fill in the blank.
On that pleasant autumn day, I was accompanied _____ my daughter, Zenani.

in

by
of
for

Q.No: 200	Choose the part of the sentence that contains an error: The committee have given its decision.
have given	
No error	
its decision	
The committee	

KD Job Updates