

## Recruitment of Sub-Inspector in Delhi Police, CAPFs and Assistant Sub-Inspector in CISF Examination, 2018

Roll No. :	
Registration No.	
Name :	
Exam Venue :	
Exam Time :	10:00 AM - 12:00 PM
Exam Date :	12/03/2019

Section : SI CPO

Q.1 Select the option that is related to the third term in the same way as the second term is related to the first term.

BDFH : DWDS :: TVYZ : \_\_\_\_\_

- Ans
- 1. VDWB
  - 2. UDWA
  - 3. VEWA
  - 4. VEBB

Question ID : 98958010099  
Status : Not Answered  
Chosen Option : --

Q.2 In a code language, QUESTION is written as OPJUTFVR. How will FACTOR be written as in that language?

- Ans
- 1. QPUDBE
  - 2. BGDSPU
  - 3. SPUDBG
  - 4. SUPEGB

Question ID : 98958010101  
Status : Not Answered  
Chosen Option : --

Q.3 Three of the following four number-pairs are alike in a certain way and one is different. Find the odd one out.

- Ans
- 1. 8 : 25
  - 2. 14 : 33
  - 3. 9 : 23
  - 4. 5 : 15

Question ID : 98958010112  
Status : Not Answered  
Chosen Option : --

Q.4 Three of the following four words are alike in a certain way and one is different. Find the odd one out.

- Ans
- 1. Gardening
  - 2. Carpenter

- 3. Tailor
- 4. Blacksmith

Question ID : 98958010093  
Status : Answered  
Chosen Option : 1

Q.5 Select the set of numbers that is similar to the following set of numbers.

{15, 21, 27}

- Ans
- 1. {25, 40, 56}
  - 2. {20, 28, 36}
  - 3. {40, 55, 75}
  - 4. {12, 24, 32}

Question ID : 98958010117  
Status : Answered  
Chosen Option : 2

Q.6 Three of the following four words are alike in a certain way and one is different. Find the odd one out.

- Ans
- 1. Sad
  - 2. Jealous
  - 3. Angry
  - 4. Weep

Question ID : 98958010092  
Status : Marked For Review  
Chosen Option : 2

Q.7 Select the word-pair in which the two words are related in the same way as are the two words in the following word-pair.

Memory : Amnesia

- Ans
- 1. Old age : Senility
  - 2. Audition : Hearing
  - 3. Cholera : Epidemic
  - 4. Vision : Blindness

Question ID : 98958010097  
Status : Answered  
Chosen Option : 4

Q.8 Select the number-pair in which the two numbers are related in the same way as are the two numbers of the given number pair.

5 : 9

- Ans
- 1. 10 : 29
  - 2. 12 : 33

3. 25 : 79

4. 17 : 65

Question ID : 9895801011

Status : Not Attempted and Marked For Review

Chosen Option : --

Q.9 If HECK is coded as 94410 and DIG is coded as 588, then how will BIKE be coded as?

Ans  1. 38124

2. 39105

3. 19113

4. 38115

Question ID : 98958010103

Status : Answered

Chosen Option : 1

Q.1<sub>0</sub> Which letter will replace the question mark (?) in the following series?

M, N, O, L, Q, J, ?, H

Ans  1. S

2. R

3. K

4. J

Question ID : 98958010086

Status : Not Answered

Chosen Option : --

Q.1<sub>1</sub> Select the option that is related to the third term in the same way as the second term is related to the first term.

BYWD : DWUF :: AZYB : \_\_\_\_\_

Ans  1. CXVB

2. BYWE

3. CXWD

4. BZXC

Question ID : 98958010098

Status : Not Answered

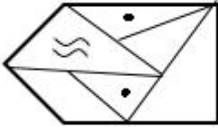
Chosen Option : --

Q.1<sub>2</sub> Select the correct mirror image of the given figure when the mirror is placed on the right of the figure.

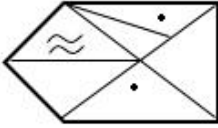


Ans

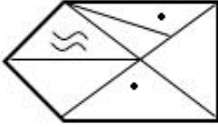
✓ 1.



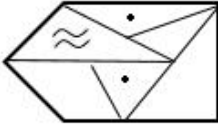
✗ 2.



✗ 3.



✗ 4.



Question ID : 98958010129  
Status : Marked For Review  
Chosen Option : 1

Q.1 Which number will replace the question mark (?) in the following series?

3

3, 5, 7, 8, 15, ?, 31, 26

Ans

✗ 1. 21

✗ 2. 24

✗ 3. 18

✓ 4. 14

Question ID : 98958010108  
Status : Not Answered  
Chosen Option : --

Q.1 'Tuesday' is related to 'Mars' in the same way as 'Thursday' is related to '\_\_\_\_\_'.  
4

Ans

✓ 1. Jupiter

✗ 2. Mercury

✗ 3. Saturn

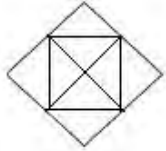
✗ 4. Venus

Question ID : 98958010095  
Status : Answered  
Chosen Option : 1

Q.1  
5



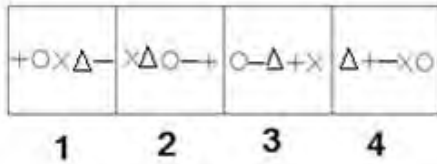
How many triangles are there in the following figure?



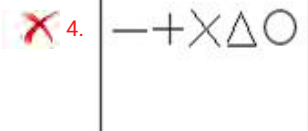
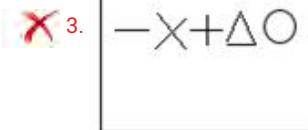
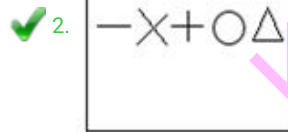
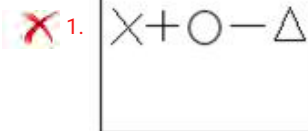
- Ans
- 1. 14
  - 2. 12
  - 3. 8
  - 4. 10

Question ID : 98958010124  
 Status : Marked For Review  
 Chosen Option : 2

Q.1 Select the figure that will come next in the following series.

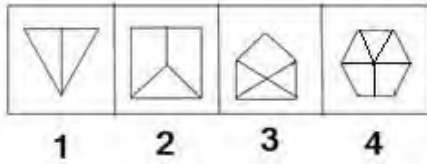


Ans



Question ID : 98958010123

Q.1 Select the figure that will come next in the following figure series.



Ans

- 1.
- 2.
- 3.
- 4.

KD JOB UPDATES

Question ID : 98958010122

Status : Not Attempted and Marked For Review

Chosen Option : --

Q.1 Priya's school bus was facing north-west when it reached her school. After starting from her house, the bus took one left turn, one right turn and another left turn to reach her school. In which direction was the bus facing when it left Priya's house?

- Ans
- 1. South-east
  - 2. North-west
  - 3. South-west
  - 4. North-east

Status : Answered  
Chosen Option : 4

Q.1 9 After starting from her house, Sameera walked a few metres towards the East. From there, she took a right turn and walked 100 m, and then took a left turn and walked 30 m. Finally, she took a left turn again and walked 40 m to reach the market. If the air distance between her house and the market is 100 m, how far did Sameera walk towards the East initially from her house?

- Ans
- 1. 80 m
  - 2. 50 m
  - 3. 30 m
  - 4. 60 m

Question ID : 98958010132  
Status : Answered  
Chosen Option : 1

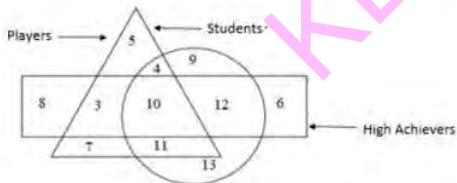
Q.2 0 Select the correct alternative to indicate the arrangement of the following words in a logical and meaningful order.

- 1. Sleep
- 2. Cold
- 3. Blanket
- 4. Winter
- 5. Warm
- 6. Shop

- Ans
- 1. 4, 2, 6, 3, 5, 1
  - 2. 6, 3, 2, 1, 4, 5
  - 3. 4, 3, 6, 2, 1, 5
  - 4. 4, 3, 2, 6, 1, 5

Question ID : 98958010089  
Status : Answered  
Chosen Option : 1

Q.2 1 In the following diagram, the triangle represents 'players', the circle represents 'students' and the rectangle represents 'high achievers'. The numbers in different segments show the number of persons.



How many high-achieving students are not players?

- Ans
- 1. 12
  - 2. 3
  - 3. 15
  - 4. 13

Question ID : 98958010134  
Status : Answered  
Chosen Option : 1

Two statements are given, followed by three conclusions numbered I, II and III. Assuming the statements to be true, even if they seem to be at variance with commonly known facts, decide which of the conclusions logically follow(s) from the statements.

**Statements:**

Some mangoes are fruits.

No fruit is vegetable.

**Conclusions:**

I. Some mangoes are vegetables.

II. Some fruits are mangoes.

III. No vegetable is a mango.

Ans  1. Only conclusion II follows.

2. Only conclusion I follows.

3. Only conclusions II and III follow.

4. Only conclusions I and III follow.

Question ID : 98958010104

Status : Answered

Chosen Option : 1

Q.2 Three of the following four number-pairs are alike in a certain way and one is different. Find the odd one out.

3

Ans  1. 34 : 7

2. 78 : 13

3. 18 : 9

4. 56 : 11


Question ID : 98958010115

Status : Answered

Chosen Option : 2

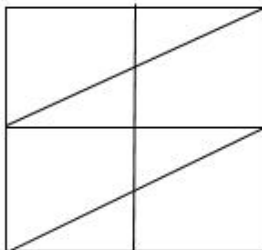
Q.2 Select the option in which the given figure is embedded.

4

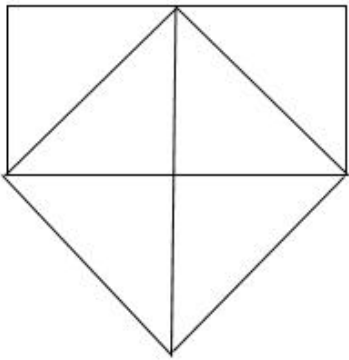


Ans

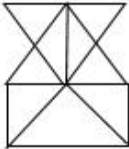
1.



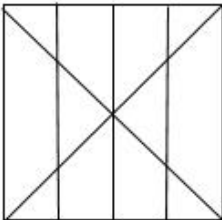
2.



3.



4.



Question ID : 98958010126

Status : Answered

Chosen Option : 1

Q.2  
5 'Meat' is related to 'Vegetarian' in the same way as 'Alcohol' is related to '\_\_\_\_\_'.  
5

- Ans
- 1. Smoker
  - 2. Teetotaller
  - 3. Water
  - 4. Dietician

Question ID : 98958010094

Status : Answered

Chosen Option : 2

Q.2  
6 Which fraction will replace the question mark (?) in the following series?  
6

$$\frac{1}{4}, \frac{3}{5}, \frac{6}{7}, \frac{10}{11}, ?$$

- Ans
- 1.  $\frac{17}{21}$
  - 2.  $\frac{17}{27}$
  - 3.  $\frac{15}{23}$
  - 4.  $\frac{15}{19}$

Question ID : 98958010107  
Status : Not Answered  
Chosen Option : --

Q.2 Three of the following four letter-clusters are alike in a certain way and one is different. Find the odd one out.  
7

- Ans
- 1. CLEH
  - 2. MKOH
  - 3. TRVN
  - 4. PYRU

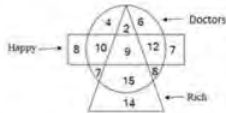
Question ID : 98958010091  
Status : Not Answered  
Chosen Option : --

Q.2 Three of the following four number-pairs are alike in a certain way and one is different. Find the odd one out.  
8

- Ans
- 1. 14 : 94
  - 2. 12 : 72
  - 3. 8 : 32
  - 4. 6 : 18

Question ID : 98958010114  
Status : Not Answered  
Chosen Option : --

Q.2 In the following diagram, the triangle represents 'rich', the circle represents 'doctor' and the rectangle represents 'happy' persons. The numbers in different segments show the number of persons.  
9



How many rich doctors are not happy?

- Ans
- 1. 15
  - 2. 9
  - 3. 26
  - 4. 17

Question ID : 98958010133  
Status : Answered  
Chosen Option : 4

Q.3 Which number will replace the question mark (?) in the following series?  
0

7, 10, 16, 19, 25, ?

- Ans
- 1. 33
  - 2. 28
  - 3. 31

4. 29

Question ID : 98958010106  
Status : Answered  
Chosen Option : 2

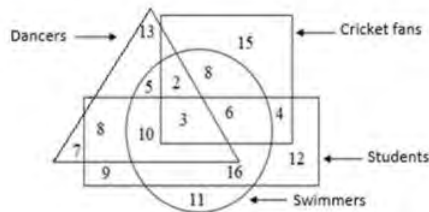
Q.3  
1 Which letter-cluster will replace the question mark (?) in the following series?

BZD, DXF, GUI, ?, PLR

- Ans  1. KPN  
 2. KQM  
 3. LRT  
 4. MOQ

Question ID : 98958010087  
Status : Not Answered  
Chosen Option : --

Q.3  
2 In the following diagram, the triangle represents 'dancers', the circle represents 'swimmers', the rectangle represents 'students' and the square represents 'cricket fans'. The numbers in different segments show the number of persons.



How many student dancers are swimmers but not cricket fans?

- Ans  1. 15  
 2. 3  
 3. 13  
 4. 10

Question ID : 98958010135  
Status : Answered  
Chosen Option : 4

Q.3  
3 Select the option that is related to the third number in the same way as the second number is related to the first number.

8 : 81 :: 10 : \_\_\_\_\_

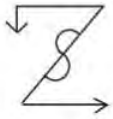
- Ans  1. 100  
 2. 111  
 3. 120  
 4. 121

Question ID : 98958010109  
Status : Answered  
Chosen Option : 4

Q.3




4 Select the correct mirror image of the given figure when the mirror is placed on the right of the figure.



Ans

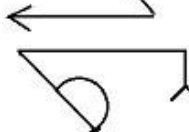
1.



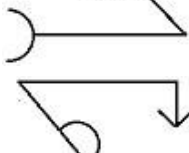
2.



3.



4.



Question ID : 98958010128

Status : Answered

Chosen Option : 2

Q.3 Select the correct alternative to indicate the arrangement of the following words in a logical and meaningful order.

5

1. Probation
2. Selection
3. Application
4. Confirmation
5. Appointment

Ans  1. 5, 1, 4, 2, 3

2. 4, 1, 3, 2, 5

3. 3, 2, 5, 4, 1

4. 3, 2, 5, 1, 4

Question ID : 98958010088

Status : Answered

Chosen Option : 3

Q.3 In a code language, BANKER is written as NABREK. How will STRING be written as in that language?

6

Ans  1. RTSGNI

2. RTGSNI

3. TSIRGN

4. RSTGIN

Question ID : 98958010100

Status : Answered

Chosen Option : 1

Q.3  
7 Which two numbers should be interchanged to make the given equations correct?

$$6 \times 3 - 8 \div 2 + 5 = 8 \div 2 + 3 \times 5 - 6$$

Ans  1. 5 and 6

2. 3 and 5

3. 8 and 6

4. 6 and 2

Question ID : 98958010119

Status : Not Attempted and Marked For Review

Chosen Option : --

Q.3  
8 If CAB = 12 and FED = 30, then HIDE = \_\_\_\_\_.

Ans  1. 48

2. 52

3. 44

4. 68

Question ID : 98958010102

Status : Answered

Chosen Option : 2

Q.3  
9 Which of the following interchanges of signs and numbers would make the given equation correct?

$$8 + 2 - 6 \times 4 + 3 = 13$$

Ans  1.  $\div$  and  $+$ , 4 and 8

2.  $-$  and  $+$ , 6 and 4

3.  $\times$  and  $\div$ , 8 and 6

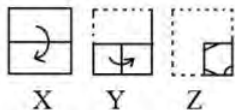
4.  $\times$  and  $-$ , 2 and 6

Question ID : 98958010120

Status : Not Answered

Chosen Option : --

Q.4  
0 The sequence of folding a piece of square paper and the manner in which the folded paper has been cut is shown in the figures X, Y and Z. How would this paper look when unfolded?

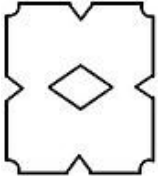


Ans

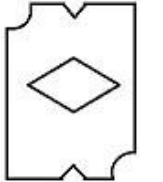
1.



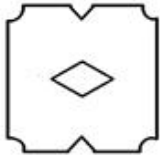
2.



3.



4.

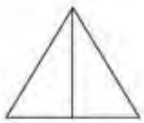


Question ID : 98958010130

Status : Answered

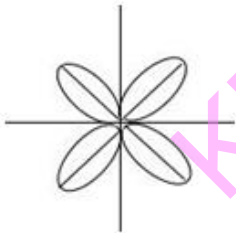
Chosen Option : 3

Q.4  
1 Select the option in which the given figure is embedded.

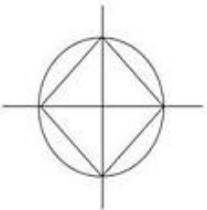


Ans

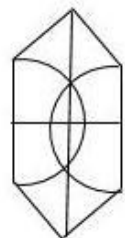
1.



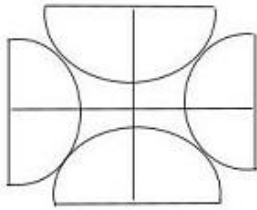
2.



3.



4.



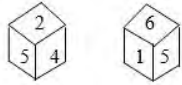
Question ID : 98958010127

Status : Answered

Chosen Option : 2

Q.4 Two positions of the same dice are given. Which number will be at the top if '6' is at the bottom?

2



- Ans
- 1. 1
  - 2. 3
  - 3. 4
  - 4. 2

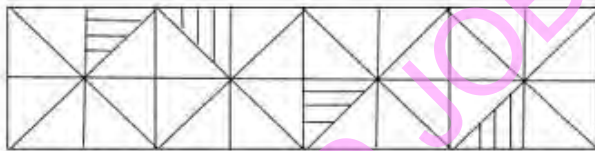
Question ID : 98958010125

Status : Answered

Chosen Option : 3

Q.4 Select the figure that will come next in the following figure series.

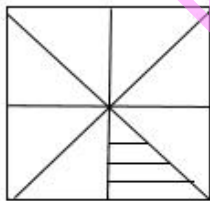
3



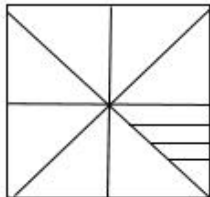
1      2      3      4

Ans

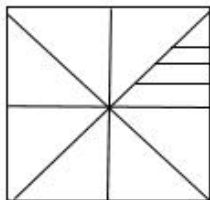
1.



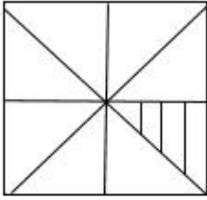
2.



3.



4.



Question ID : 98958010121  
Status : **Not Answered**  
Chosen Option : --

Q.4 Select the option that is related to the third number in the same way as the second number is related to the first number.

4

15 : 25 :: 24 : \_\_\_\_\_

- Ans  1. 40  
 2. 45  
 3. 32  
 4. 35

Question ID : 98958010110  
Status : **Answered**  
Chosen Option : 1

Q.4 Three of the following four number-pairs are alike in a certain way and one is different. Find the odd one out.

5

- Ans  1. 4 : 17  
 2. 10 : 99  
 3. 5 : 26  
 4. 9 : 82

Question ID : 98958010113  
Status : **Not Answered**  
Chosen Option : --

Q.4 Three of the following four letter-clusters are alike in a certain way and one is different. Find the odd one out.

6

- Ans  1. EIOU  
 2. AIOU  
 3. ILOU  
 4. AEIU

Question ID : 98958010090  
Status : **Not Answered**  
Chosen Option : --

Q.4  
7

Two statements are given, followed by three conclusions numbered I, II and III. Assuming the statements to be true, even if they seem to be at variance with commonly known facts, decide which of the conclusions logically follow(s) from the statements.

**Statements:**

Some plants are trees.  
All trees are bushes.

**Conclusions:**

- I. Some bushes are plants.
- II. All bushes are plants.
- III. No bush is a plant.

- Ans
- 1. Only conclusions II and III follow.
  - 2. Only conclusion III follows.
  - 3. Only conclusion I follows.
  - 4. Only conclusions I and III follow.

Question ID : 98958010105

Status : Answered

Chosen Option : 3

Q.4 Select the word-pair in which the two words are related in the same way as are the two words in the following word-pair.

8

Request : Order

- Ans
- 1. Whisper : Shout
  - 2. Clean : Wash
  - 3. Think : Thought
  - 4. Summer : Heat

Question ID : 98958010096

Status : Answered

Chosen Option : 1

Q.4 Select the set of numbers that is similar to the following set of numbers.

9

{7, 13, 20}

- Ans
- 1. {9, 15, 23}
  - 2. {12, 19, 29}
  - 3. {4, 10, 17}
  - 4. {10, 18, 24}

Question ID : 98958010116

Status : Answered

Chosen Option : 3

Q.5 Which two signs should be interchanged to make the given equation correct?

0

$$4 + 8 \times 12 \div 6 - 4 = 8$$

- Ans
- 1. + and  $\div$

2.  $\times$  and  $+$

3.  $\div$  and  $-$

4.  $-$  and  $+$

Question ID : 98958010118

Status : Answered

Chosen Option : 4

Q.5 The first Sheikh Saud International Prize for Materials Research has been awarded to \_\_\_\_\_ who is an Indian scientist in January 2019.

Ans  1. Vikram Sarabhai

2. M Visvesvaraya

3. Meghnad Saha

4. Chintamani Nagesa Ramachandra Rao

Question ID : 98958010213

Status : Not Answered

Chosen Option : --

Q.5 The Governor of Tamil Nadu Banwarilal Purohit presented the 'Sansad Ratna Awards' in Chennai in January 2019. Which of the following MPs is NOT a recipient of Sansad Ratna Award?

Ans  1. Kirit Solanki

2. N K Premachandran

3. Nishikant Dubey

4. Supriya Sule

Question ID : 98958010215

Status : Not Answered

Chosen Option : --

Q.5 In December 2018, \_\_\_\_\_ won the Women's Singles title at the National Squash Championship held in Delhi.

Ans  1. Sachika Balvani

2. Joshna Chinappa

3. Bhuvaneshwari Kumari

4. Aparajitha Balamurukan

Question ID : 98958010217

Status : Not Answered

Chosen Option : --

Q.5 A not-for-profit organisation 'Youth for Equality' has moved the Supreme Court by questioning the constitutional validity of the \_\_\_\_\_ Constitutional Amendment Act which provides 10% quota for economically weaker sections.

Ans  1. 143<sup>rd</sup>

2. 103<sup>rd</sup>

3. 99<sup>th</sup>



4. 100<sup>th</sup>

Question ID : 98958010189  
Status : Not Answered  
Chosen Option : --

Q.5 Pune-based organisation \_\_\_\_\_ conducted a study using a 15% M-15 methanol blend in vehicles and tested them for 3,000 km to evaluate emissions in real-world conditions as well as to check the performance of the vehicles.

- Ans
- 1. Vehicle Organisation of India (VOI)
  - 2. Automotive Organisation (AO)
  - 3. Automotive Research Association of India (ARAI)
  - 4. Research Association of India (RAI)

Question ID : 98958010190  
Status : Not Answered  
Chosen Option : --

Q.5 Who was the Governor General of India during the first Anglo-Sikh War?

- Ans
- 1. Lord Cornwallis
  - 2. Lord Dalhousie
  - 3. Lord Canning
  - 4. Lord Hardinge

Question ID : 98958010206  
Status : Not Answered  
Chosen Option : --

Q.5 Queen Naikidevi is remembered as the woman who defeated \_\_\_\_\_ in 1178 CE.

- Ans
- 1. Muhammad bin Tughlaq
  - 2. Muhammad Ghori
  - 3. Al-Salih Muhammad
  - 4. Muhammad al-Baqir

Question ID : 98958010232  
Status : Not Answered  
Chosen Option : --

Q.5 The \_\_\_\_\_ dance form originated as a tribal dance in the forests of Odisha in the 18th century and attained the status of a martial art-based dance form in the 19th century.

- Ans
- 1. Kalaripayattu
  - 2. Bawai
  - 3. Chhobia
  - 4. Chhau

Question ID : 98958010222  
Status : Answered

Chosen Option : 1

Q.5  
9 Olfactory receptors are located in our:

- Ans
- 1. Tongue
  - 2. Ears
  - 3. Nose
  - 4. Eyes

Question ID : 98958010210  
Status : Answered  
Chosen Option : 1

Q.6  
0 Why do water droplets always take a round shape when dropped onto plane surfaces?

- Ans
- 1. Due to atmospheric pressure
  - 2. Due to exertion of surface tension by the molecules
  - 3. Due to gravity
  - 4. Due to the presence of Eddy Currents in the air

Question ID : 98958010216  
Status : Answered  
Chosen Option : 2

Q.6  
1 The Nobel Prize is awarded in 6 categories each year. Which of the following is NOT one of them?

- Ans
- 1. Economics
  - 2. Physics
  - 3. Mathematics
  - 4. Literature

Question ID : 98958010229  
Status : Answered  
Chosen Option : 1

Q.6  
2 In January 2019, the Department of Science and Technology partnered with Doordarshan to launch two free-to-air channels DD Science and an Internet-based channel \_\_\_\_\_ which will offer live, scheduled play and video-on-demand on science topics.

- Ans
- 1. Internet Science
  - 2. India Science
  - 3. India Technology
  - 4. India Live

Question ID : 98958010208  
Status : Not Answered  
Chosen Option : --

Q.6  
3 The Treaty of Sagauli was signed between the British and the \_\_\_\_\_.

- Ans
- 1. Marathas
  - 2. Gurkhas
  - 3. Nawab of Awadh
  - 4. Nawab of Bengal

Question ID : 98958010220  
Status : Answered  
Chosen Option : 2

Q.6  
4 Which of the following states does NOT share a border with Bangladesh?

- Ans
- 1. Manipur
  - 2. Mizoram
  - 3. Tripura
  - 4. Meghalaya

Question ID : 98958010228  
Status : Answered  
Chosen Option : 4

Q.6  
5 The audible range of sound for human beings is from:

- Ans
- 1. 10 Hz to 100 kHz
  - 2. 20 Hz to 20 kHz
  - 3. 10 Hz to 10 kHz
  - 4. 20 Hz to 200 kHz

Question ID : 98958010212  
Status : Answered  
Chosen Option : 4

Q.6  
6 \_\_\_\_\_ is the study of viruses.

- Ans
- 1. Parasitology
  - 2. Virology
  - 3. Mycology
  - 4. Protozoology

Question ID : 98958010233  
Status : Answered  
Chosen Option : 3

Q.6  
7 Who inaugurated the National Museum of Indian Cinema in Mumbai in Jan 2019.

- Ans
- 1. Amitabh Bachchan
  - 2. Devendra Fadnavis
  - 3. Ram Nath Kovind

✓ 4. Narendra Modi

Question ID : 98958010196  
Status : Answered  
Chosen Option : 2

Q.6 Under which of the following acts did the Government of India set up Telecom Regulatory Authority of India (TRAI)?  
8

- Ans
- 1. Telecom Regulatory Authority of India Act, 2003
  - 2. Telecom Regulatory Authority of India Act, 2005
  - 3. Telecom Regulatory Authority of India Act, 1997
  - 4. Telecom Regulatory Authority of India Act, 2001

Question ID : 98958010202  
Status : Answered  
Chosen Option : 1

Q.6 Dadra and Nagar Haveli is a union territory located between the states of Maharashtra and \_\_\_\_\_.  
9

- Ans
- 1. West Bengal
  - 2. Uttarakhand
  - 3. Andhra Pradesh
  - 4. Gujarat

Question ID : 98958010195  
Status : Answered  
Chosen Option : 4

Q.7 As of January 2019, who holds the portfolio of Ministry of Science and Technology?  
0

- Ans
- 1. Piyush Goyal
  - 2. Harsh Vardhan
  - 3. Prakash Javadekar
  - 4. Manohar Parrikar

Question ID : 98958010200  
Status : Answered  
Chosen Option : 4

Q.7 The smallest Union Territories is \_\_\_\_\_.  
1

- Ans
- 1. Daman and Diu
  - 2. Puducherry
  - 3. Dadra and Nagar Haveli
  - 4. Lakshadweep

Question ID : 98958010223  
Status : Answered

Chosen Option : 2

Q.7  
2 "The Origin of Species" was written by:

- Ans
- 1. Carolus Linnaeus
  - 2. Charles Darwin
  - 3. William Paley
  - 4. Erasmus Darwin

Question ID : 98958010219  
Status : Not Answered  
Chosen Option : --

Q.7  
3 Swadeshi Movement started in India during \_\_\_\_\_.

- Ans
- 1. Anti-Bengal Partition agitation
  - 2. The protest against Rowlatt Act
  - 3. The Champaran Satyagrah of Gandhi
  - 4. The first non-co-operation movement of 1919-22

Question ID : 98958010224  
Status : Answered  
Chosen Option : 4

Q.7  
4 The Battle of Chausa was fought between Humayun and Sher Shah Suri on 26 June in the year \_\_\_\_\_.

- Ans
- 1. 1440
  - 2. 1539
  - 3. 1729
  - 4. 1639

Question ID : 98958010230  
Status : Not Answered  
Chosen Option : --

Q.7  
5 The spectrum of light was first explained by \_\_\_\_\_.

- Ans
- 1. Isaac Newton
  - 2. Galileo Galilei
  - 3. Neils Bohr
  - 4. Albert Einstein

Question ID : 98958010201  
Status : Answered  
Chosen Option : 1

Q.7  
6 The sky appears blue due to:

- Ans
- 1. Refraction of light



- 2. Reflection of light
- 3. Scattering of light
- 4. Dispersion of light

Question ID : 98958010205  
Status : Answered  
Chosen Option : 4

Q.7 The Hindu Prize 2018 for Fiction was awarded to \_\_\_\_\_, the English author of 'Requiem in Raga Janki' during the  
7 The Hindu Lit for Life 2019.

- Ans
- 1. Vinayak Varma
  - 2. Neelum Saran Gour
  - 3. Rajiv Elipe
  - 4. Mamta Nainy

Question ID : 98958010187  
Status : Not Answered  
Chosen Option : --

Q.7 In January 2019, the Union Ministry of \_\_\_\_\_ started a 'Know Your Budget' series on its Twitter handle to educate the  
8 general public about the budgetary process.

- Ans
- 1. Finance
  - 2. Human Resource Development
  - 3. Commerce and Industry
  - 4. Corporate Affairs

Question ID : 98958010203  
Status : Not Answered  
Chosen Option : --

Q.7 Which of the following statements is NOT true about the Export-Import Bank of India (EXIM Bank)?  
9

- Ans
- 1. The Bank provides assistance in helping Indian firms in their globalization efforts
  - 2. It was established in 2014 under the Export-Import Bank of India Act.
  - 3. Its main objective is to provide financial assistance to promote Indian exports.
  - 4. It is a premier export finance institution of India.

Question ID : 98958010193  
Status : Not Answered  
Chosen Option : --

Q.8 \_\_\_\_\_ is aimed at the welfare of areas and people affected by mining-related operations, using the funds generated  
0 by District Mineral Foundations (DMFs).

- Ans
- 1. Pradhan Mantri Kaushal Vikas Yojana

2. Pradhan Mantri Khanij Kshetra Kalyan Yojana

3. Pradhan Mantri Ujjwala Yojana

4. Pradhan Mantri Digidhan Vyapar Yojana

Question ID : 98958010197

Status : Not Answered

Chosen Option : --

Q.8 The Maharana Pratap Sagar reservoir on the river Beas in Himachal Pradesh is also known as \_\_\_\_\_.

1

Ans  1. Ukai Dam

2. Pong Dam

3. Dharoi Dam

4. Tehri Dam

Question ID : 98958010191

Status : Answered

Chosen Option : 4

Q.8 \_\_\_\_\_ has emerged as the world's most dynamic city among 131 major established and emerging business hubs globally as per JLL City Momentum Index 2019.

2

Ans  1. Hyderabad

2. Bengaluru

3. Delhi

4. Chennai

Question ID : 98958010211

Status : Not Answered

Chosen Option : --

Q.8 Apiculture is the technique of scientific rearing of \_\_\_\_\_ in a specially designed wooden box.

3

Ans  1. Honey bees

2. Moths

3. Termites

4. Silkworms

Question ID : 98958010227

Status : Answered

Chosen Option : 1

Q.8 What was the paternal name of Swami Dayanand Saraswati?

4

Ans  1. Mool Shankar

2. Narayan Shankar

3. Om Shankar

4. Krishna Shankar



Question ID : 98958010209  
Status : Not Answered  
Chosen Option : --

Q.8 Which Bharatiya Janata Party leader was bestowed with 'Sansad Ratna Award' for distinguished performance as a parliamentarian in January 2019?

- Ans
- 1. Virendra Kashyap
  - 2. Rao Inderjit Singh
  - 3. Rajesh Chudasama
  - 4. Anurag Thakur

Question ID : 98958010194  
Status : Not Answered  
Chosen Option : --

Q.8 The famous festival of 'Tsokum Samai' is celebrated by the people of which state to invoke blessings for a rich harvest?

- Ans
- 1. Assam
  - 2. Nagaland
  - 3. Mizoram
  - 4. Meghalaya

Question ID : 98958010225  
Status : Not Answered  
Chosen Option : --

Q.8 In September 2018, India's ace sprinter \_\_\_\_\_ was appointed as Sports Ambassador of Assam.

- Ans
- 1. Jata Shankar
  - 2. Anand Shetty
  - 3. Hima Das
  - 4. Makhan Singh

Question ID : 98958010234  
Status : Answered  
Chosen Option : 3

Q.8 In January 2019, Prime Minister Narendra Modi inaugurated and laid the foundation stone for several development projects at Silvassa in Dadra and Nagar Haveli. Which of the following is NOT one of them?

- Ans
- 1. An arts college in Dadra and Nagar Haveli
  - 2. A medical college in Dadra and Nagar Haveli
  - 3. Door to door waste collection, segregation and processing of solid waste in Dadra and Nagar Haveli digitally
  - 4. New IT policy for Dadra and Nagar Haveli

Question ID : 98958010192  
Status : Not Answered  
Chosen Option : --

Q.8  
9 Which team has won the inaugural Pro Volleyball League Title held in February 2019?

- Ans
- 1. Chennai Spartans
  - 2. Black Hawks Hyderabad
  - 3. Calicut Heroes
  - 4. Ahmedabad Defenders

Question ID : 98958010204  
Status : Not Answered  
Chosen Option : --

Q.9  
0 Article \_\_\_\_\_ of the Constitution of India states that the Judge of a High Court shall be appointed by the President with the consultation of the Chief Justice of India and the Governor of the State.

- Ans
- 1. 21
  - 2. 217
  - 3. 72
  - 4. 201

Question ID : 98958010198  
Status : Not Answered  
Chosen Option : --

Q.9  
1 \_\_\_\_\_ has become the youngest man in the world to have scaled seven highest peaks and volcanic summits across continents.

- Ans
- 1. Mohan Singh
  - 2. Santosh Yadav
  - 3. Satyarup Siddhanta
  - 4. Raj Singh Dharmashaktu

Question ID : 98958010214  
Status : Not Answered  
Chosen Option : --

Q.9  
2 A study by Gitanjali Katlam and Soumya Prasad from Jawaharlal Nehru University, Mohit Agarwal from Asian Adventures and Raman Kumar from Nature Science Initiative examined the relationship between \_\_\_\_\_ which was published in the journal 'Current Science'.

- Ans
- 1. animal and plant life
  - 2. animal type and behavior vis-à-vis the risk of plastic ingestion
  - 3. water scarcity and animals
  - 4. different animal species and their food

Question ID : 98958010188  
Status : Not Answered  
Chosen Option : --

Q.9  
3 The five kingdom concept of classification of organisms was given by:

- Ans  1. Robert Whittaker  
 2. Charles Darwin  
 3. Carl Woese  
 4. William Paley

Question ID : 98958010231  
Status : Answered  
Chosen Option : 2

Q.9 In January 2019, Microsoft India launched a new e-commerce platform called 're-weave.in' under Project ReWeave to aid handloom weavers in Telangana. Which of the following is NOT a benefit of the e-commerce platform?

- Ans  1.  
It will showcase signature collections created by the weaver communities.  
 2.  
It will help weavers increase their income and earn a sustainable livelihood.  
 3.  
It will decelerate the process of reviving traditional forgotten Indian art.  
 4.  
It will connect artisans to the buyers directly, enabling them to expand to newer customers and markets.

Question ID : 98958010226  
Status : Not Answered  
Chosen Option : --

Q.9 Indian teen cyclist \_\_\_\_\_ created history by winning the country's maiden medal in track cycling at the world level in 2018.

- Ans  1. Deborah Herold  
 2. Esow Alben  
 3. Sreedhar Savanur  
 4. Bikram Singh

Question ID : 98958010235  
Status : Not Answered  
Chosen Option : --

Q.9 \_\_\_\_\_ is/are being considered an alternative to reduce the country's crude oil imports worth ₹7 lakh crore. It/They can also be a potential weapon to fight increasing pollution.

- Ans  1. Phytoremediation  
 2. Biofuels  
 3. Extractor fans  
 4. Air purifiers

Question ID : 98958010199  
Status : Not Answered  
Chosen Option : --

Q.9 In January 2019, the Competition Commission of India (CCI) approved a deal wherein Samara Capital-backed Witzig Advisory Services and Amazon will acquire \_\_\_\_\_, which operates a supermarket store chain called 'More'.

Ans

- 1. Aditya Birla Retail Ltd
- 2. Godrej Consumer Products Ltd
- 3. Reliance Retail
- 4. Future Group

Question ID : 98958010207  
Status : Not Answered  
Chosen Option : --

Q.9 'Rauf' is a folk dance associated with the state of \_\_\_\_\_.

- Ans
- 1. Jammu and Kashmir
  - 2. Punjab
  - 3. Haryana
  - 4. Rajasthan

Question ID : 98958010221  
Status : Answered  
Chosen Option : 1

Q.9 In January 2019, the Union Cabinet headed by Prime Minister Narendra Modi approved a capital infusion of ₹ \_\_\_\_\_ in state-owned Export-Import Bank of India (EXIM Bank) to expand its business.

- Ans
- 1. 4,000 crore
  - 2. 6,000 crore
  - 3. 2,000 crore
  - 4. 9,000 crore

Question ID : 98958010186  
Status : Not Answered  
Chosen Option : --

Q.1 Where is the Dachigam sanctuary located?

- Ans
- 1. Jammu and Kashmir
  - 2. Assam
  - 3. Chhattisgarh
  - 4. Karnataka

Question ID : 98958010218  
Status : Answered  
Chosen Option : 2

Q.1 A ladder leaning against a wall makes an angle  $\alpha$  with the horizontal ground such that  $\tan \alpha = \frac{3}{4}$ . If the foot of the ladder is 5 m away from the wall, what is the length of the ladder?

- Ans
- 1. 5.25 m
  - 2. 4.5 m
  - 3. 6.25 m

4. 3.75 m

Question ID : 98958010325

Status : Answered

Chosen Option : 3

Q.1 The price of sugar has decreased by 15%. By what percentage can a person increase the consumption so that there is  
02 no change in the expenditure?

- Ans
- 1.  $\frac{300}{17}$  %
  - 2.  $\frac{300}{23}$  %
  - 3.  $\frac{50}{3}$  %
  - 4.  $\frac{20}{3}$  %

Question ID : 98958010298

Status : Answered

Chosen Option : 1

Q.1 If a train runs at 60 km/h, it reaches its destination 15 minutes late. But, if it runs at 80 km/h, it is late by 7 minutes only.  
03 The right time for the train to cover its journey is:

- Ans
- 1. 18 minutes
  - 2. 17 minutes
  - 3. 20 minutes
  - 4. 21 minutes

Question ID : 98958010309

Status : Answered

Chosen Option : 2

Q.1  
04 If  $x + \frac{1}{x} = 5$ , then  $x^3 + \frac{1}{x^3}$  is equal to:

- Ans
- 1. 110
  - 2. 125
  - 3. 145
  - 4. 130

Question ID : 98958010316

Status : Answered

Chosen Option : 1

Q.1 A, B and C started a business by investing ₹ 55,000, ₹ 65,000 and ₹ 75,000 respectively. A is a working partner and gets  
05 20% of the profit and the remaining is distributed in the proportion of their investments. If total profit is ₹ 87,750, what is the share of A?

- Ans
- 1. ₹ 23,000
  - 2. ₹ 37,500
  - 3. ₹ 27,000
  - 4. ₹ 37,350

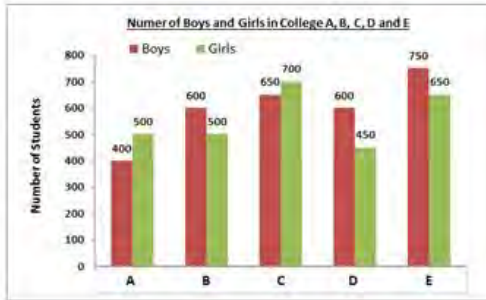


Question ID : 98958010302

Status : Answered

Chosen Option : 4

Q.1  
06



In the given bar graph, what is the ratio of the total boys and girls in all 5 colleges?

- Ans
- 1. 13 : 12
  - 2. 12 : 13
  - 3. 15 : 14
  - 4. 14 : 15

Question ID : 98958010327

Status : Answered

Chosen Option : 3

Q.1

07 The value of  $\left[ \frac{\sin^2 24^\circ + \sin^2 66^\circ}{\cos^2 24^\circ + \cos^2 66^\circ} + \sin^2 61^\circ + \cos 61^\circ \sin 29^\circ \right]$  is equal to:

- Ans
- 1. 3
  - 2. 2
  - 3. 1
  - 4. 0

Question ID : 98958010324

Status : Not Answered

Chosen Option : --

Q.1

08 The square root of which of the following is a rational number?

- Ans
- 1. 1250.49
  - 2. 1354.24
  - 3. 6250.49
  - 4. 5768.28

Question ID : 98958010286

Status : Not Answered

Chosen Option : --

Q.1 A sum of ₹ 20,000 is invested for 15 months at the interest of 10% per annum compounded half yearly. What is the  
09 percentage gain, correct to one decimal place, at the end of 15 months?

- Ans
- 1. 12.5%

2. 13.4%

3. 13.0%

4. 13.6%

Question ID : 98958010304

Status : Not Answered

Chosen Option : --

Q.1 In  $\Delta ABC$ ,  $\angle A = 50^\circ$ . Its sides AB and AC are produced to the point D and E. If the bisectors of  $\angle CBD$  and  $\angle BCE$  meet at the point O, then  $\angle BOC$  is equal to:

Ans  1.  $75^\circ$

2.  $40^\circ$

3.  $65^\circ$

4.  $55^\circ$

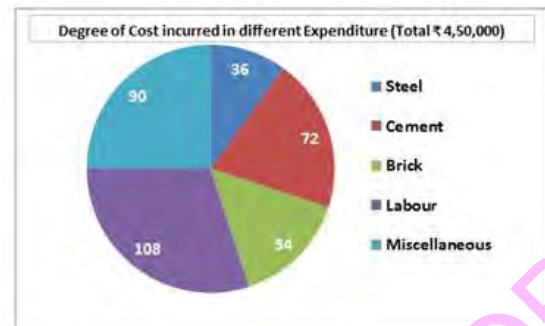
Question ID : 98958010321

Status : Not Answered

Chosen Option : --

Q.1

11



In the given pie-chart, what is the total expenditure (in percent) on labour charges?

Ans  1. 25%

2. 18%

3. 30%

4. 20%

Question ID : 98958010330

Status : Answered

Chosen Option : 3

Q.1 The radius of a cylinder is increased by 150 cm and its height is decreased by 20 cm. What is the percentage increase in its volume?

Ans  1. 400%

2. 80%

3. 600%

4. 500%

Question ID : 98958010315

Status : Not Answered

Chosen Option : --



Q.1 The sides of a triangle are 10 cm, 24 cm and 26 cm. At each of its vertices, circles of radius 3.5 cm are drawn. What is the area of the triangle excluding the portion covered by the sectors of the circles? ( $\pi = \frac{22}{7}$ )

- Ans
- 1. 100.75 cm<sup>2</sup>
  - 2. 75.75 cm<sup>2</sup>
  - 3. 81.5 cm<sup>2</sup>
  - 4. 78.25 cm<sup>2</sup>

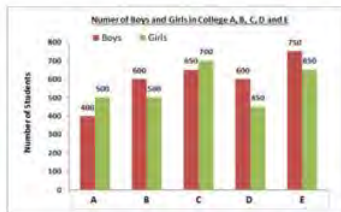
Question ID : 98958010312  
Status : Answered  
Chosen Option : 1

Q.1 The efficiencies of A, B and C are in the ratio 4 : 5 : 6. Working together, they can complete a work in 12 days. In how many days will A alone be able to complete that work?

- Ans
- 1. 40
  - 2. 45
  - 3. 30
  - 4. 36

Question ID : 98958010306  
Status : Answered  
Chosen Option : 2

Q.1  
15



In the given bar graph, in which college the difference between the percentage of boys and girls is maximum, by taking total number of students as base for that college?

- Ans
- 1. B
  - 2. A
  - 3. D
  - 4. E

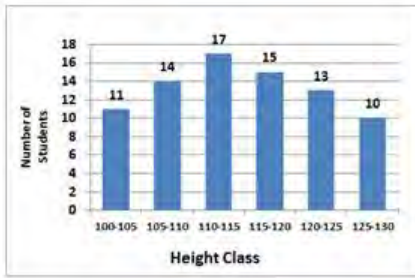
Question ID : 98958010328  
Status : Answered  
Chosen Option : 3

Q.1 What is the sum of digits of the least number, which when divided by 15, 18 and 24 leaves the remainder 8 in each case and is also divisible by 13?

- Ans
- 1. 16
  - 2. 18
  - 3. 15
  - 4. 17

Question ID : 98958010289  
Status : Not Answered  
Chosen Option : --

Q.1  
17



In the given histogram, in which class does the median height of the students lie?

- Ans
- 1. 110-115
  - 2. 115-120
  - 3. 105-110
  - 4. 120-125

Question ID : 98958010334  
Status : Answered  
Chosen Option : 1

Q.1  
18  $\frac{675 \times 675 \times 675 + 325 \times 325 \times 325}{67.5 \times 67.5 + 32.5 \times 32.5 - 67.5 \times 32.5}$  is equal to:

- Ans
- 1. 10,000
  - 2. 1,000
  - 3. 1,00,000
  - 4. 100

Question ID : 98958010292  
Status : Not Answered  
Chosen Option : --

Q.1  
19 24 persons working 8 hours a day can complete 2 units of a work in 10 days. How many persons are required to complete 4 units of that work, if they work 6 hours a day for 16 days?

- Ans
- 1. 36
  - 2. 40
  - 3. 32
  - 4. 48

Question ID : 98958010305  
Status : Answered  
Chosen Option : 2

Q.1  
20 If  $\Delta ABC \sim \Delta PQR$ ,  $\frac{ar(ABC)}{ar(\Delta PQR)} = \frac{9}{4}$ , AC = 12 cm, AB = 18 cm and BC = 15 cm, then PR is equal to:

- Ans
- 1.  $\frac{20}{3}$  cm
  - 2. 10 cm
  - 3. 8 cm
  - 4. 12 cm

Question ID : 98958010322

Status : Answered

Chosen Option : 1

Q.1 Pipes A and B can fill a tank in 6 hours and 9 hours respectively and pipe C can empty the full tank in 12 hours. If all three pipes are opened together when a tank is empty, in how many hours will 35% of the tank be filled?

- Ans
- 1. 1.5
  - 2. 1.6
  - 3. 1.8
  - 4. 1.9

Question ID : 98958010307

Status : Answered

Chosen Option : 3

Q.1 A boat can go 30 km downstream and 24 km upstream in 2 hours 27 minutes. Also, it can go 20 km downstream and 8 km upstream in 74 minutes. What is the speed of the boat in still water in km/h?

- Ans
- 1. 22
  - 2. 18
  - 3. 20
  - 4. 24

Question ID : 98958010310

Status : Not Answered

Chosen Option : --

Q.1 ABCD is a cyclic quadrilateral such that AB is a diameter of the circle circumscribing it and angle ADC =  $140^\circ$ . Then angle BAC is equal to:

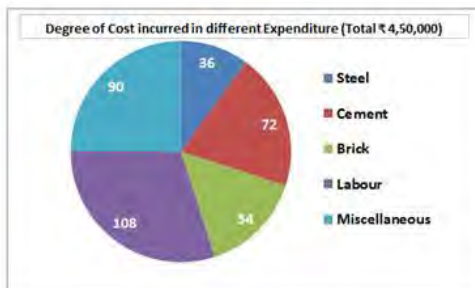
- Ans
- 1.  $40^\circ$
  - 2.  $60^\circ$
  - 3.  $38^\circ$
  - 4.  $50^\circ$

Question ID : 98958010319

Status : Not Answered

Chosen Option : --

Q.1  
24



In the given pie-chart, the expenditure on steel is what percent of the expenditure on cement?

- Ans
- 1. 55%
  - 2. 40%

3. 45%

4. 50%

Question ID : 98958010331

Status : Answered

Chosen Option : 4

Q.1 25 If A's income is 40 % more than the income of B, then what percentage of B's income is less than income of A?

Ans  1.  $28\frac{5}{7}\%$

2.  $27\frac{4}{7}\%$

3.  $28\frac{4}{7}\%$

4.  $27\frac{5}{7}\%$

Question ID : 98958010297

Status : Answered

Chosen Option : 3

Q.1 26 A shopkeeper marks his goods at a price such that after giving a discount of 25% , he gains 20% . If the cost price of the article is ₹460, what is its marked price?

Ans  1. ₹ 725

2. ₹ 752

3. ₹ 736

4. ₹ 748

Question ID : 98958010295

Status : Answered

Chosen Option : 3

Q.1 27 The successive discounts of 20% , 10% and 15% is equivalent to a single discount of:

Ans  1. 44.5 %

2. 42.2 %

3. 38.8 %

4. 43.5 %

Question ID : 98958010296

Status : Not Answered

Chosen Option : --

Q.1 28 Two pipes A and B can fill a tank in 6 hours and 9 hours respectively. They are opened alternately for 1 hour each, starting with pipe A first. In how many hours will the tank be filled ?

Ans  1. 6

2. 5

3. 7

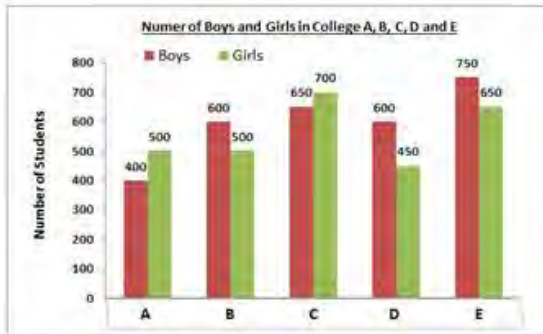
4. 4

Question ID : 98958010308

Status : Not Answered

Chosen Option : --

Q.1  
29



In the given bar graph, what is the average number of girls in all colleges?

- Ans
- 1. 550
  - 2. 600
  - 3. 540
  - 4. 560

Question ID : 98958010329

Status : Not Answered

Chosen Option : --

Q.1  
30 From the top of a 10 m high building, the angle of elevation of the top of a tower is  $60^\circ$  and the angle of depression of the foot of the tower is  $\theta$ , such that  $\tan \theta = \frac{2}{3}$ . What is the height of the tower to nearest metres?

- Ans
- 1. 33 m
  - 2. 36 m
  - 3. 34 m
  - 4. 35 m

Question ID : 98958010326

Status : Not Answered

Chosen Option : --

Q.1  
31  $4\frac{4}{5} \div \frac{3}{7}$  of  $7 + \frac{4}{5} \times \frac{3}{10} - \frac{1}{5}$  is equal to:

- Ans
- 1.  $\frac{41}{25}$
  - 2.  $\frac{8}{5}$
  - 3.  $\frac{7}{5}$
  - 4.  $\frac{34}{25}$

Question ID : 98958010290

Status : Not Answered

Chosen Option : --



Q.1 32 A shopkeeper sold two articles for ₹ 9471 each. On one, he gained 23% and on the other, he lost 23%. What is the overall percentage gain or loss?

- Ans
- 1. 5.29% gain
  - 2. 6.29% loss
  - 3. 6.29% gain
  - 4. 5.29% loss

Question ID : 98958010300  
Status : Not Answered  
Chosen Option : --

Q.1 33 If  $a^3 - b^3 = 208$  and  $a - b = 4$ , then  $(a + b)^2 - ab$  is equal to:

- Ans
- 1. 42
  - 2. 52
  - 3. 32
  - 4. 38

Question ID : 98958010317  
Status : Not Answered  
Chosen Option : --

Q.1 34 A sum of ₹ 15,000 is invested partly at 12% per annum and the remaining at 10% per annum simple interest. If the total interest at the end of 2 years is ₹ 3,344 how much money was invested at 10% per annum?

- Ans
- 1. ₹ 6,600
  - 2. ₹ 6,500
  - 3. ₹ 6,400
  - 4. ₹ 6,200

Question ID : 98958010303  
Status : Not Answered  
Chosen Option : --

Q.1 35 In a class of 50 students, 40% are girls. The average weight of the boys is 62 kg and that of the girls is 58 kg. What is the average weight (in kg) of the whole class?

- Ans
- 1. 60.6
  - 2. 60.8
  - 3. 60.2
  - 4. 60.4

Question ID : 98958010293  
Status : Not Answered  
Chosen Option : --

Q.1 36 PA and PB are two tangents to a circle with centre O, from a point P outside the circle. A and B are points on the circle.

If  $\angle APB = 40^\circ$ , then  $\angle OAB$  is equal to:

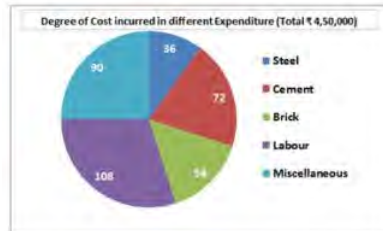
- Ans
- 1.  $20^\circ$
  - 2.  $25^\circ$

3.  $50^\circ$

4.  $40^\circ$

Question ID : 98958010320  
Status : Not Answered  
Chosen Option : --

Q.1  
37



In the given pie-chart, what is the ratio of the total expenditure on steel, cement and bricks to the total expenditure on labour and miscellaneous expenses?

- Ans
- 1. 4 : 5
  - 2. 3 : 5
  - 3. 9 : 11
  - 4. 3 : 7

Question ID : 98958010332  
Status : Not Answered  
Chosen Option : --

Q.1  
38

Two numbers are in the ratio 4 : 5. If their HCF is 16, then the sum of these two numbers is:

- Ans
- 1. 160
  - 2. 144
  - 3. 124
  - 4. 150

Question ID : 98958010288  
Status : Answered  
Chosen Option : 2

Q.1  
39

5 cubes, each of edge 4 cm, are joined end to end. What is the total surface area of the resulting cuboid?

- Ans
- 1.  $352 \text{ cm}^2$
  - 2.  $720 \text{ cm}^2$
  - 3.  $526 \text{ cm}^2$
  - 4.  $486 \text{ cm}^2$

Question ID : 98958010313  
Status : Not Answered  
Chosen Option : --

Q.1  
40

$9\frac{3}{4} \div [2\frac{1}{6} + \{4\frac{1}{3} - (2\frac{1}{2} + \frac{3}{4})\}]$  is equal to:

Ans

1.  $\frac{15}{4}$

2.  $\frac{17}{4}$

3. 3

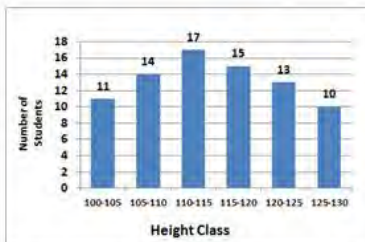
4. 4

Question ID : 98958010291

Status : Not Answered

Chosen Option : --

Q.1  
41



In the given histogram, what is the mean height of all students correct to one decimal place?

Ans  1. 116.8 cm

2. 115.6 cm

3. 114.7 cm

4. 116.2 cm

Question ID : 98958010335

Status : Not Answered

Chosen Option : --

Q.1  
42 A sphere of radius 6 cm is melted and recast into spheres of radius 2 cm each. How many such spheres can be made?

Ans  1. 36

2. 24

3. 25

4. 27

Question ID : 98958010314

Status : Not Answered

Chosen Option : --

Q.1  
43 If  $\tan x = \cot (45^\circ + 2x)$ , then what is the value of  $x$ ?

Ans  1.  $20^\circ$

2.  $15^\circ$

3.  $45^\circ$

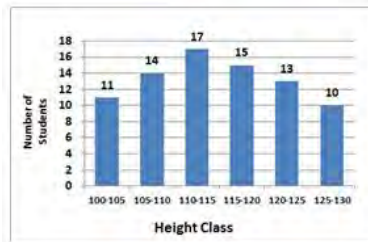
4.  $\frac{45^\circ}{2}$

Question ID : 98958010323

Status : Not Answered

Chosen Option : --

Q.1  
44



In the given histogram, what percentage of students have height in the interval of 105 – 110?

- Ans
- 1. 17.5%
  - 2. 18%
  - 3. 17%
  - 4. 16.5%

Question ID : 98958010333

Status : Not Answered

Chosen Option : --

Q.1 The side of a rhombus is 5 cm and one of its diagonal is 8 cm. What is the area of the rhombus?  
45

- Ans
- 1. 30 cm<sup>2</sup>
  - 2. 40 cm<sup>2</sup>
  - 3. 24 cm<sup>2</sup>
  - 4. 20 cm<sup>2</sup>

Question ID : 98958010311

Status : Not Answered

Chosen Option : --

Q.1 What is the sum of the mean proportional between 10.8 and 4.8 and the third proportional of 2 and 4?  
46

- Ans
- 1. 8.2
  - 2. 11.2
  - 3. 10.2
  - 4. 15.2

Question ID : 98958010301

Status : Not Answered

Chosen Option : --

Q.1 If the six digit number  $4x4y96$  is divisible by 88, then what will be the value of  $(x + 2y)$ ?  
47

- Ans
- 1. 13
  - 2. 12
  - 3. 10
  - 4. 11

Question ID : 98958010287

Status : Not Answered

Chosen Option : --

Q.1 In an examination, 54 % of the candidates passed in science and 42 % failed in mathematics. If 32% failed in both subjects, what percentage passed in both subjects?

- Ans
- 1. 48%
  - 2. 44%
  - 3. 56%
  - 4. 32%

Question ID : 98958010299

Status : Not Answered

Chosen Option : --

Q.1 If  $(x - 5)^3 + (x - 6)^3 + (x - 7)^3 = 3(x - 5)(x - 6)(x - 7)$ , then what is the value of  $x$ ?

- Ans
- 1. 5
  - 2. 7
  - 3. 6
  - 4. 18

Question ID : 98958010318

Status : Not Answered

Chosen Option : --

Q.1 The average of 16 numbers is 48. The average of the first 7 numbers is 45 and the average of the next 6 numbers is 52.  
50 If the 14<sup>th</sup> number is 11 less than the 15<sup>th</sup> number and is 5 more than the 16<sup>th</sup> number, then the average of the 15<sup>th</sup> and 16<sup>th</sup> number is:

- Ans
- 1. 49
  - 2. 48.5
  - 3. 47.5
  - 4. 48

Question ID : 98958010294

Status : Not Answered

Chosen Option : --

Q.1 Select the most appropriate meaning of the underlined idiom in the given sentence.

51

Many people in our country like to feather their own nest from the money they raise for social work.

- Ans
- 1. provide comforts in one's house
  - 2. enrich oneself by dishonest means
  - 3. achieve something and be proud of it
  - 4. make one's family comfortable

Question ID : 98958010420

Status : Answered

Chosen Option : 2



Q.1 52 Select the most appropriate option to substitute the underlined segment in the given sentence. If there is no need to substitute it, select No substitution required.

Every year our association is having a meeting to elect the officers.

- Ans
- 1. having a meeting
  - 2. are having a meeting
  - 3. has a meeting
  - 4. No substitution required

Question ID : 98958010391  
Status : Answered  
Chosen Option : 1

Q.1 53 Select the wrongly spelt word.

- Ans
- 1. blister
  - 2. blossom
  - 3. blemish
  - 4. blind

Question ID : 98958010427  
Status : Answered  
Chosen Option : 2

Q.1 54 Select the most appropriate option to substitute the underlined segment in the given sentence. If there is no need to substitute it, select No substitution required.

This is the first time anybody have explored into this part of the country.

- Ans
- 1. anybody has explored into this part
  - 2. anybody have explored this part
  - 3. No substitution required
  - 4. anybody has explored this part

Question ID : 98958010393  
Status : Answered  
Chosen Option : 1

Q.1 55 Select the wrongly spelt word.

- Ans
- 1. courageous
  - 2. victorious
  - 3. precious
  - 4. curious

Question ID : 98958010431  
Status : Answered  
Chosen Option : 1

Q.1  
56

Select the most appropriate option to substitute the underlined segment in the given sentence. If there is no need to substitute it, select No substitution required.

Thirteen miners were trapped inside a coal mine due to flooding from a nearby river yesterday.

- Ans
- 1. No substitution required
  - 2. trapped inside a coal mine
  - 3. were trapped into a coal mine
  - 4. have been trapped inside a coal mine

Question ID : 98958010394  
Status : Answered  
Chosen Option : 4

Q.1  
57 Select the wrongly spelt word.

- Ans
- 1. gloss
  - 2. glutton
  - 3. gobbel
  - 4. gloomy

Question ID : 98958010429  
Status : Answered  
Chosen Option : 3

Q.1  
58 Select the antonym of the given word.

ADVERSITY

- Ans
- 1. calamity
  - 2. misfortune
  - 3. casualty
  - 4. prosperity

Question ID : 98958010414  
Status : Not Answered  
Chosen Option : --

Q.1  
59 Select the word, which means the same as the group of words given.

a person who eats human flesh

- Ans
- 1. cannibal
  - 2. carnivore
  - 3. tribal
  - 4. scavenger

Question ID : 98958010424  
Status : Answered  
Chosen Option : 1

Q.1 60 Select the most appropriate meaning of the underlined idiom in the given sentence.

Don't take it seriously. He was simply pulling your leg.

- Ans
- 1. speaking in a harsh tone
  - 2. playing a joke with someone
  - 3. trying to comfort someone
  - 4. scolding someone for nothing

Question ID : 98958010419

Status : Answered

Chosen Option : 2

Q.1 61 Select the word, which means the same as the group of words given.

A large enclosure for keeping the birds in

- Ans
- 1. menagerie
  - 2. aquarium
  - 3. apiary
  - 4. aviary

Question ID : 98958010423

Status : Answered

Chosen Option : 4

Q.1 62 Select the most appropriate option to substitute the underlined segment in the given sentence. If there is no need to substitute it, select No substitution required.

The cause of the disaster has not yet known but an enquiry has been set up to find out what happened.

- Ans
- 1. is not yet known
  - 2. was not yet known
  - 3. have not yet been known
  - 4. No substitution required

Question ID : 98958010395

Status : Answered

Chosen Option : 3

Q.1 63 Select the word, which means the same as the group of words given.

A fortress typically one on high ground above a city

- Ans
- 1. palace
  - 2. citadel
  - 3. tower
  - 4. colossus

Question ID : 98958010426

Status : Answered

Chosen Option : 2

Q.1  
64 Identify the segment in the sentence, which contains the grammatical error.

I thanked him for his advices.

- Ans
- 1. advices
  - 2. him
  - 3. for his
  - 4. I thanked

Question ID : 98958010386

Status : Answered

Chosen Option : 1

Q.1  
65 Select the synonym of the given word.

MASSIVE

- Ans
- 1. thick
  - 2. strong
  - 3. huge
  - 4. solid

Question ID : 98958010407

Status : Answered

Chosen Option : 3

Q.1  
66 Select the most appropriate meaning of the underlined idiom in the given sentence.

He has set up his business now as he knows the ins and outs of it.

- Ans
- 1. difficulties
  - 2. usefulness
  - 3. importance
  - 4. details

Question ID : 98958010418

Status : Answered

Chosen Option : 4

Q.1  
67 Select the wrongly spelt word.

- Ans
- 1. essencial
  - 2. establish
  - 3. estimate
  - 4. esteem

Question ID : 98958010430  
Status : Answered  
Chosen Option : 1

Q.1  
68 Select the synonym of the given word.

AMPLIFY

- Ans  1. magnify  
 2. electrify  
 3. supply  
 4. satisfy

Question ID : 98958010409  
Status : Answered  
Chosen Option : 1

Q.1  
69 Select the antonym of the given word.

HOLLOW

- Ans  1. solid  
 2. shallow  
 3. vacant  
 4. narrow

Question ID : 98958010412  
Status : Answered  
Chosen Option : 3

Q.1  
70 Select the word, which means the same as the group of words given.

the keeper of a museum

- Ans  1. compere  
 2. commissioner  
 3. conservator  
 4. curator

Question ID : 98958010422  
Status : Answered  
Chosen Option : 4

Q.1  
71 Identify the segment in the sentence, which contains the grammatical error.

In this novel I came across some words which meaning I do not know.

- Ans  1. which meaning  
 2. came across  
 3. do not know



4. In this novel

Question ID : 98958010388

Status : Answered

Chosen Option : 1

Q.1  
72 Select the synonym of the given word.

REPLETE

- Ans
- 1. restful
  - 2. full
  - 3. occupied
  - 4. calm

Question ID : 98958010411

Status : Answered

Chosen Option : 2

Comprehension:

In the following passage, some words have been deleted. Fill in the blanks with the help of the alternatives given. Select the most appropriate option for each number.

What does the word scout mean? During a war a soldier is chosen to go \_\_\_\_\_ (1) of an army in order to \_\_\_\_\_ (2) out where the enemy is. He then \_\_\_\_\_ (3) back to the commander all the \_\_\_\_\_ (4) he has gathered about the \_\_\_\_\_ (5). Such a soldier is known as a scout.

SubQuestion No : 173

Q.1  
73 Select the most appropriate option to fill in blank No.1.

- Ans
- 1. after
  - 2. before
  - 3. ahead
  - 4. behind

Question ID : 98958010402

Status : Answered

Chosen Option : 3

Comprehension:



In the following passage, some words have been deleted. Fill in the blanks with the help of the alternatives given. Select the most appropriate option for each number.

What does the word scout mean? During a war a soldier is chosen to go \_\_\_\_\_ (1) of an army in order to \_\_\_\_\_ (2) out where the enemy is. He then \_\_\_\_\_ (3) back to the commander all the \_\_\_\_\_ (4) he has gathered about the \_\_\_\_\_ (5). Such a soldier is known as a scout.

SubQuestion No : 174

Q.1  
74 Select the most appropriate option to fill in blank  
No.2.

- Ans
- 1. call
  - 2. bring
  - 3. carry
  - 4. find

Question ID : 98958010403  
Status : Answered  
Chosen Option : 4

Comprehension:

In the following passage, some words have been deleted. Fill in the blanks with the help of the alternatives given. Select the most appropriate option for each number.

What does the word scout mean? During a war a soldier is chosen to go \_\_\_\_\_ (1) of an army in order to \_\_\_\_\_ (2) out where the enemy is. He then \_\_\_\_\_ (3) back to the commander all the \_\_\_\_\_ (4) he has gathered about the \_\_\_\_\_ (5). Such a soldier is known as a scout.

SubQuestion No : 175

Q.1  
75 Select the most appropriate option to fill in blank  
No.3.

- Ans
- 1. carries
  - 2. reports
  - 3. sends
  - 4. tells

Question ID : 98958010404  
Status : Answered  
Chosen Option : 2

Comprehension:

In the following passage, some words have been deleted. Fill in the blanks with the help of the alternatives given. Select the most appropriate option for each number.

What does the word scout mean? During a war a soldier is chosen to go \_\_\_\_\_ (1) of an army in order to \_\_\_\_\_ (2) out where the enemy is. He then \_\_\_\_\_ (3) back to the commander all the \_\_\_\_\_ (4) he has gathered about the \_\_\_\_\_ (5). Such a soldier is known as a scout.

SubQuestion No : 176

Q.1  
76 Select the most appropriate option to fill in blank  
No.4.

- Ans
- 1. news
  - 2. communications
  - 3. messages
  - 4. information

Question ID : 98958010405  
Status : Answered  
Chosen Option : 4

Comprehension:

In the following passage, some words have been deleted. Fill in the blanks with the help of the alternatives given. Select the most appropriate option for each number.

What does the word scout mean? During a war a soldier is chosen to go \_\_\_\_\_ (1) of an army in order to \_\_\_\_\_ (2) out where the enemy is. He then \_\_\_\_\_ (3) back to the commander all the \_\_\_\_\_ (4) he has gathered about the \_\_\_\_\_ (5). Such a soldier is known as a scout.

SubQuestion No : 177

Q.1  
77 Select the most appropriate option to fill in blank  
No.5.

- Ans
- 1. enemy
  - 2. commanders
  - 3. army
  - 4. soldiers

Question ID : 98958010406  
Status : Answered  
Chosen Option : 1

Q.1  
78 Select the most appropriate word to fill in the blank.

You have travelled a long way. You \_\_\_\_\_ be tired.

- Ans
- 1. should
  - 2. must

3. could

4. can

Question ID : 98958010396  
Status : Answered  
Chosen Option : 1

Q.1  
79 Select the synonym of the given word.

HARASS

Ans  1. bother

2. refuse

3. care

4. help

Question ID : 98958010410  
Status : Answered  
Chosen Option : 1

Q.1  
80 Select the wrongly spelt word.

Ans  1. disallow

2. discomfort

3. dissappoint

4. disappear

Question ID : 98958010428  
Status : Answered  
Chosen Option : 1

Q.1  
81 Identify the segment in the sentence, which contains the grammatical error.

To my point of view he should not have behaved in such a manner.

Ans  1. behaved

2. in such a manner

3. should not have

4. To my point of view

Question ID : 98958010389  
Status : Answered  
Chosen Option : 4

Q.1  
82 Select the most appropriate option to substitute the underlined segment in the given sentence. If there is no need to substitute it, select No substitution required.

Everybody wants to be winning a prize in the arts competition.

Ans  1. wants to have won

2. No substitution required

3. wants to win

4. want winning

Question ID : 98958010392

Status : Answered

Chosen Option : 3

Q.1  
83 Identify the segment in the sentence, which contains the grammatical error.

Why she was angry with her son?

Ans  1. her son

2. Why

3. angry with

4. she was

Question ID : 98958010387

Status : Answered

Chosen Option : 4

Q.1  
84 Select the antonym of the given word.

ENTHUSIASM

Ans  1. apathy

2. nervousness

3. zeal

4. fervor

Question ID : 98958010416

Status : Answered

Chosen Option : 4

Q.1  
85 Select the most appropriate meaning of the underlined idiom in the given sentence.

After getting the news of his promotion, he was in high spirits.

Ans  1. drunk

2. joyful

3. hopeful

4. mad

Question ID : 98958010417

Status : Answered

Chosen Option : 2

Q.1  
86 Select the synonym of the given word.

FOREGO

Ans

- 1. give up
- 2. forget
- 3. go ahead
- 4. ban

Question ID : 98958010408  
Status : Not Answered  
Chosen Option : --

Q.1  
87 Select the most appropriate word to fill in the blank.

Our new office is equipped \_\_\_\_\_ all the latest technology.

- Ans
- 1. with
  - 2. by
  - 3. about
  - 4. from

Question ID : 98958010397  
Status : Answered  
Chosen Option : 1

Q.1  
88 Select the antonym of the given word.

LIVELY

- Ans
- 1. sharp
  - 2. sluggish
  - 3. bubbly
  - 4. active

Question ID : 98958010413  
Status : Answered  
Chosen Option : 4

Q.1  
89 Identify the segment in the sentence, which contains the grammatical error.

The old man climbed seven floors with hardly no effort at all.

- Ans
- 1. hardly no effort
  - 2. climbed
  - 3. at all
  - 4. The old man

Question ID : 98958010390  
Status : Answered  
Chosen Option : 3

Q.1  
90 Select the most appropriate word to fill in the blank.

I looked at my damaged car and \_\_\_\_\_ how much it would cost to repair it.

- Ans
- 1. wonder
  - 2. wondered
  - 3. wondering
  - 4. wonders

Question ID : 98958010400  
Status : Answered  
Chosen Option : 2

Comprehension:

KD JOB UPDATES



Read the following passage and answer the questions given after it.

Tutankhamun was an Egyptian pharaoh who was buried in a lavish tomb filled with gold artifacts in the Valley of the Kings. His tomb was discovered in 1922 by an archaeological team led by British Egyptologist Howard Carter.

The tomb was mostly intact, an extraordinary find given that most of the tombs in the Valley of the Kings had been looted in ancient times.

But while Tutankhamun's tomb was lavish, historical and archaeological evidence indicates that the young pharaoh was sickly and spent his short rule trying to undo a religious revolution that his father had started.

Tutankhaten (as he was called at birth) was born around the year 1341 B.C. His father was the pharaoh Akhenaten, a revolutionary pharaoh who tried to focus Egypt's polytheistic religion around the worship of the sun disc, the Aten. In his fervor, Akhenaten ordered the names and images of other Egyptian deities to be destroyed or defaced.

Tutankhamun ascended to the throne around 1332 B.C., when he was about 9 years old. Given his young age he would have relied heavily on his advisers. At some point his name was changed to Tutankhamun, removing the word "aten" — a reminder of his father's religious revolution — from his name.

Tutankhamun also condemned his father's actions in a stela (a stone with inscription) found at Karnak, saying that Akhenaten's religious revolution caused the gods to ignore Egypt. Part of the stela reads "the temples and the cities of the gods and the goddesses, starting from Elephantine as far as the Delta marshes ... were fallen into decay and their shrines were fallen into ruin, having become mere mounds overgrown with grass ... The gods were ignoring this land..."

Archaeological evidence indicates that Tutankhamun suffered from ill health. A study of his remains published in 2010 found that he suffered from a variety of maladies, including malaria and Kohler disease (a rare bone disorder of the foot). A number of canes have been found in Tutankhamun's tomb, finds that support the idea that the pharaoh had difficulty walking at times.

It's not known what killed Tutankhamun. There have been numerous hypotheses put forward over the years. It's been suggested that he died from an infection caused by a broken leg or from injuries suffered in a chariot accident.

The boy king died in 1323 B.C. around the age of 18. His death was unexpected, and his tomb appears to have been finished quickly. Microbes found on the wall of the tomb indicate that the paint on the wall wasn't even dry when the tomb was sealed.

Howard Carter's team discovered the tomb's entranceway on November 4, 1922, and on November 26 they got inside.

While the treasures were incredible, the tomb was unusually small for a pharaoh's burial, containing only 110 square meters (1,184 square feet) of floor space. The tomb's small size may have been because the pharaoh died young and unexpectedly and there wasn't time to carve out a larger tomb.

SubQuestion No : 191

Q.1  
91 What is the main theme of the passage?

- Ans
- 1. The death of Tutankhamun and his burial
  - 2. The life and death of the boy Pharaoh
  - 3. The discovery of an incredible treasure
  - 4. The tomb of Tutankhamun

Question ID : 98958010433

Status : Answered

Chosen Option : 1

Comprehension:

KD JOB UPDATES

Read the following passage and answer the questions given after it.

Tutankhamun was an Egyptian pharaoh who was buried in a lavish tomb filled with gold artifacts in the Valley of the Kings. His tomb was discovered in 1922 by an archaeological team led by British Egyptologist Howard Carter.

The tomb was mostly intact, an extraordinary find given that most of the tombs in the Valley of the Kings had been looted in ancient times.

But while Tutankhamun's tomb was lavish, historical and archaeological evidence indicates that the young pharaoh was sickly and spent his short rule trying to undo a religious revolution that his father had started.

Tutankhaten (as he was called at birth) was born around the year 1341 B.C. His father was the pharaoh Akhenaten, a revolutionary pharaoh who tried to focus Egypt's polytheistic religion around the worship of the sun disc, the Aten. In his fervor, Akhenaten ordered the names and images of other Egyptian deities to be destroyed or defaced.

Tutankhamun ascended to the throne around 1332 B.C., when he was about 9 years old. Given his young age he would have relied heavily on his advisers. At some point his name was changed to Tutankhamun, removing the word "aten" — a reminder of his father's religious revolution — from his name.

Tutankhamun also condemned his father's actions in a stela (a stone with inscription) found at Karnak, saying that Akhenaten's religious revolution caused the gods to ignore Egypt. Part of the stela reads "the temples and the cities of the gods and the goddesses, starting from Elephantine as far as the Delta marshes ... were fallen into decay and their shrines were fallen into ruin, having become mere mounds overgrown with grass ... The gods were ignoring this land..."

Archaeological evidence indicates that Tutankhamun suffered from ill health. A study of his remains published in 2010 found that he suffered from a variety of maladies, including malaria and Kohler disease (a rare bone disorder of the foot). A number of canes have been found in Tutankhamun's tomb, finds that support the idea that the pharaoh had difficulty walking at times.

It's not known what killed Tutankhamun. There have been numerous hypotheses put forward over the years. It's been suggested that he died from an infection caused by a broken leg or from injuries suffered in a chariot accident.

The boy king died in 1323 B.C. around the age of 18. His death was unexpected, and his tomb appears to have been finished quickly. Microbes found on the wall of the tomb indicate that the paint on the wall wasn't even dry when the tomb was sealed.

Howard Carter's team discovered the tomb's entranceway on November 4, 1922, and on November 26 they got inside.

While the treasures were incredible, the tomb was unusually small for a pharaoh's burial, containing only 110 square meters (1,184 square feet) of floor space. The tomb's small size may have been because the pharaoh died young and unexpectedly and there wasn't time to carve out a larger tomb.



SubQuestion No : 192

Q.1  
92 The discovery of a number of canes in the tomb indicates that Tutankhamun:

- Ans
- 1. suffered from an infection.
  - 2. had difficulty in walking.
  - 3. had fallen from a chariot.
  - 4. suffered from Malaria.

Question ID : 98958010434

Status : Answered

Chosen Option : 4

Comprehension:

KD JOB UPDATES

Read the following passage and answer the questions given after it.

Tutankhamun was an Egyptian pharaoh who was buried in a lavish tomb filled with gold artifacts in the Valley of the Kings. His tomb was discovered in 1922 by an archaeological team led by British Egyptologist Howard Carter.

The tomb was mostly intact, an extraordinary find given that most of the tombs in the Valley of the Kings had been looted in ancient times.

But while Tutankhamun's tomb was lavish, historical and archaeological evidence indicates that the young pharaoh was sickly and spent his short rule trying to undo a religious revolution that his father had started.

Tutankhaten (as he was called at birth) was born around the year 1341 B.C. His father was the pharaoh Akhenaten, a revolutionary pharaoh who tried to focus Egypt's polytheistic religion around the worship of the sun disc, the Aten. In his fervor, Akhenaten ordered the names and images of other Egyptian deities to be destroyed or defaced.

Tutankhamun ascended to the throne around 1332 B.C., when he was about 9 years old. Given his young age he would have relied heavily on his advisers. At some point his name was changed to Tutankhamun, removing the word "aten" — a reminder of his father's religious revolution — from his name.

Tutankhamun also condemned his father's actions in a stela (a stone with inscription) found at Karnak, saying that Akhenaten's religious revolution caused the gods to ignore Egypt. Part of the stela reads "the temples and the cities of the gods and the goddesses, starting from Elephantine as far as the Delta marshes ... were fallen into decay and their shrines were fallen into ruin, having become mere mounds overgrown with grass ... The gods were ignoring this land..."

Archaeological evidence indicates that Tutankhamun suffered from ill health. A study of his remains published in 2010 found that he suffered from a variety of maladies, including malaria and Kohler disease (a rare bone disorder of the foot). A number of canes have been found in Tutankhamun's tomb, finds that support the idea that the pharaoh had difficulty walking at times.

It's not known what killed Tutankhamun. There have been numerous hypotheses put forward over the years. It's been suggested that he died from an infection caused by a broken leg or from injuries suffered in a chariot accident.

The boy king died in 1323 B.C. around the age of 18. His death was unexpected, and his tomb appears to have been finished quickly. Microbes found on the wall of the tomb indicate that the paint on the wall wasn't even dry when the tomb was sealed.

Howard Carter's team discovered the tomb's entranceway on November 4, 1922, and on November 26 they got inside.

While the treasures were incredible, the tomb was unusually small for a pharaoh's burial, containing only 110 square meters (1,184 square feet) of floor space. The tomb's small size may have been because the pharaoh died young and unexpectedly and there wasn't time to carve out a larger tomb.

SubQuestion No : 193

Q.1  
93 Tutankhamun's father was a revolutionary. What was his revolution?

- Ans
- 1. He wanted his people to be polytheistic.
  - 2. He wanted the Egyptians to worship one God – Aten.
  - 3. Egyptians were asked to have no religion and no god.
  - 4. Images and names of all the Egyptian deities had to be destroyed.

Question ID : 98958010435

Status : Not Answered

Chosen Option : --

Comprehension:

KD JOB UPDATES



Read the following passage and answer the questions given after it.

Tutankhamun was an Egyptian pharaoh who was buried in a lavish tomb filled with gold artifacts in the Valley of the Kings. His tomb was discovered in 1922 by an archaeological team led by British Egyptologist Howard Carter.

The tomb was mostly intact, an extraordinary find given that most of the tombs in the Valley of the Kings had been looted in ancient times.

But while Tutankhamun's tomb was lavish, historical and archaeological evidence indicates that the young pharaoh was sickly and spent his short rule trying to undo a religious revolution that his father had started.

Tutankhaten (as he was called at birth) was born around the year 1341 B.C. His father was the pharaoh Akhenaten, a revolutionary pharaoh who tried to focus Egypt's polytheistic religion around the worship of the sun disc, the Aten. In his fervor, Akhenaten ordered the names and images of other Egyptian deities to be destroyed or defaced.

Tutankhamun ascended to the throne around 1332 B.C., when he was about 9 years old. Given his young age he would have relied heavily on his advisers. At some point his name was changed to Tutankhamun, removing the word "aten" — a reminder of his father's religious revolution — from his name.

Tutankhamun also condemned his father's actions in a stela (a stone with inscription) found at Karnak, saying that Akhenaten's religious revolution caused the gods to ignore Egypt. Part of the stela reads "the temples and the cities of the gods and the goddesses, starting from Elephantine as far as the Delta marshes ... were fallen into decay and their shrines were fallen into ruin, having become mere mounds overgrown with grass ... The gods were ignoring this land..."

Archaeological evidence indicates that Tutankhamun suffered from ill health. A study of his remains published in 2010 found that he suffered from a variety of maladies, including malaria and Kohler disease (a rare bone disorder of the foot). A number of canes have been found in Tutankhamun's tomb, finds that support the idea that the pharaoh had difficulty walking at times.

It's not known what killed Tutankhamun. There have been numerous hypotheses put forward over the years. It's been suggested that he died from an infection caused by a broken leg or from injuries suffered in a chariot accident.

The boy king died in 1323 B.C. around the age of 18. His death was unexpected, and his tomb appears to have been finished quickly. Microbes found on the wall of the tomb indicate that the paint on the wall wasn't even dry when the tomb was sealed.

Howard Carter's team discovered the tomb's entranceway on November 4, 1922, and on November 26 they got inside.

While the treasures were incredible, the tomb was unusually small for a pharaoh's burial, containing only 110 square meters (1,184 square feet) of floor space. The tomb's small size may have been because the pharaoh died young and unexpectedly and there wasn't time to carve out a larger tomb.

SubQuestion No : 194

Q.1  
94 Tutankhamun had a short rule. Most of his time was used in:

- Ans
- 1. looking after the well- being of his people
  - 2. erecting stelas at different places
  - 3. trying to undo the religious revolution of his father
  - 4. fighting with his own diseases

Question ID : 98958010436

Status : Not Answered

Chosen Option : --

Comprehension:

KD JOB UPDATES



Read the following passage and answer the questions given after it.

Tutankhamun was an Egyptian pharaoh who was buried in a lavish tomb filled with gold artifacts in the Valley of the Kings. His tomb was discovered in 1922 by an archaeological team led by British Egyptologist Howard Carter.

The tomb was mostly intact, an extraordinary find given that most of the tombs in the Valley of the Kings had been looted in ancient times.

But while Tutankhamun's tomb was lavish, historical and archaeological evidence indicates that the young pharaoh was sickly and spent his short rule trying to undo a religious revolution that his father had started.

Tutankhaten (as he was called at birth) was born around the year 1341 B.C. His father was the pharaoh Akhenaten, a revolutionary pharaoh who tried to focus Egypt's polytheistic religion around the worship of the sun disc, the Aten. In his fervor, Akhenaten ordered the names and images of other Egyptian deities to be destroyed or defaced.

Tutankhamun ascended to the throne around 1332 B.C., when he was about 9 years old. Given his young age he would have relied heavily on his advisers. At some point his name was changed to Tutankhamun, removing the word "aten" — a reminder of his father's religious revolution — from his name.

Tutankhamun also condemned his father's actions in a stela (a stone with inscription) found at Karnak, saying that Akhenaten's religious revolution caused the gods to ignore Egypt. Part of the stela reads "the temples and the cities of the gods and the goddesses, starting from Elephantine as far as the Delta marshes ... were fallen into decay and their shrines were fallen into ruin, having become mere mounds overgrown with grass ... The gods were ignoring this land..."

Archaeological evidence indicates that Tutankhamun suffered from ill health. A study of his remains published in 2010 found that he suffered from a variety of maladies, including malaria and Kohler disease (a rare bone disorder of the foot). A number of canes have been found in Tutankhamun's tomb, finds that support the idea that the pharaoh had difficulty walking at times.

It's not known what killed Tutankhamun. There have been numerous hypotheses put forward over the years. It's been suggested that he died from an infection caused by a broken leg or from injuries suffered in a chariot accident.

The boy king died in 1323 B.C. around the age of 18. His death was unexpected, and his tomb appears to have been finished quickly. Microbes found on the wall of the tomb indicate that the paint on the wall wasn't even dry when the tomb was sealed.

Howard Carter's team discovered the tomb's entranceway on November 4, 1922, and on November 26 they got inside.

While the treasures were incredible, the tomb was unusually small for a pharaoh's burial, containing only 110 square meters (1,184 square feet) of floor space. The tomb's small size may have been because the pharaoh died young and unexpectedly and there wasn't time to carve out a larger tomb.

SubQuestion No : 195

Q.1  
95 Which statement is NOT true according to the passage?

- Ans
- 1. The tomb appears to have been finished quickly as the paint wasn't dry when it was sealed
  - 2. The tomb was unusually small for a pharaoh's burial.
  - 3. Tutankhamun's tomb was lavishly filled with gold artifacts.
  - 4. Howard Carter's team discovered the tomb's entranceway on November 26, 1922.

Question ID : 98958010437  
Status : Not Answered  
Chosen Option : --

Q.1  
96 Select the most appropriate meaning of the underlined idiom in the given sentence.

A friend is no friend if he leaves you in the lurch.

- Ans
- 1. make a fool of someone
  - 2. leave someone in a helpless condition
  - 3. take advantage of someone
  - 4. leave for one's own work

Question ID : 98958010421  
Status : Answered  
Chosen Option : 2

Q.1  
97 Select the most appropriate word to fill in the blank.

You will not be allowed in the Film Festival \_\_\_\_\_ you have a photo ID card.

- Ans
- 1. if
  - 2. in case
  - 3. unless
  - 4. whether

Question ID : 98958010398  
Status : Answered  
Chosen Option : 3

Q.1  
98 Select the antonym of the given word.

VANITY

- Ans
- 1. timidity
  - 2. dignity

3. pride

4. humility

Question ID : 98958010415

Status : Answered

Chosen Option : 3

Q.1  
99 Select the word, which means the same as the group of words given.

a medical specialist who administers drugs for relieving pain during surgery

Ans  1. analgesic

2. anesthetist

3. nephrologist

4. dermatologist

Question ID : 98958010425

Status : Answered

Chosen Option : 2

Q.2  
00 Select the most appropriate word to fill in the blank.

The assistant in the library picked up the books from the tables and put \_\_\_\_\_ back on the shelves.

Ans  1. they

2. its

3. it

4. them

Question ID : 98958010399

Status : Answered

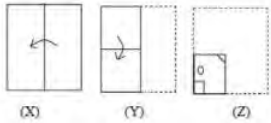
Chosen Option : 4

## Recruitment of Sub-Inspector in Delhi Police, CAPFs and Assistant Sub-Inspector in CISF Examination, 2018

Roll No. :	
Registration No.	
Name :	
Exam Venue :	
Exam Time :	3:00 PM - 5:00 PM
Exam Date :	12/03/2019

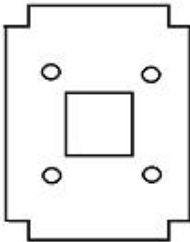
Section : SI CPO

**Q.1** The sequence of folding a piece of square paper and the manner in which the folded paper has been cut is shown in the figures X, Y and Z. How would this paper look when unfolded?

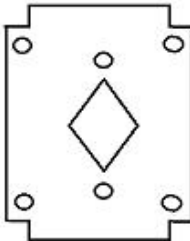


Ans

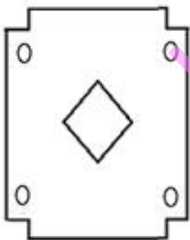
1.




2.



3.



4.



Question ID : 98958010180  
 Status : Answered  
 Chosen Option : 3

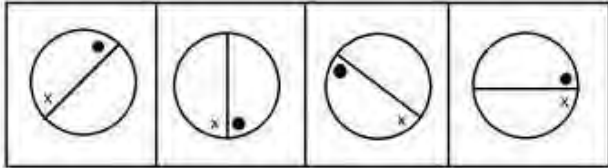


Q.2 Three of the following four number-pairs are alike in a certain way and one is different. Find the odd one out.

- Ans  1. 7 : 11  
 2. 11 : 25  
 3. 13 : 29  
 4. 9 : 17

Question ID : 98958010162  
Status : Not Answered  
Chosen Option : --

Q.3 Select the figure that will come next in the following series.



Ans

- 1.
- 2.
- 3.
- 4.

Question ID : 98958010171  
Status : Not Answered  
Chosen Option : --

Q.4 Which number will replace the question mark (?) in the following series?

4, 10, 18, 38, ?, 150

- Ans  1. 84

- 2. 74
- 3. 78
- 4. 70

Question ID : 98958010158  
Status : Answered  
Chosen Option : 2

Q.5 In a code language, MACHINE is written as CAMHENI. How will MONSTER be written as in that language?

- Ans  1. NOMSRET
- 2. SNOMRET
  - 3. OMNSETR
  - 4. NOMETSR

Question ID : 98958010150  
Status : Answered  
Chosen Option : 1

Q.6 Which of the following interchanges of signs and numbers would make the given equation correct?

$$12 + 4 + 2 - 6 \times 3 = 3 + 12 + 6 \times 2 - 4$$

- Ans  1. - and +, 6 and 4
- 2. ÷ and +, 6 and 4
  - 3. × and ÷, 4 and 6
  - 4. × and -, 4 and 6

Question ID : 98958010170  
Status : Not Answered  
Chosen Option : --

Q.7 Three of the following four number-pairs are alike in a certain way and one is different. Find the odd one out.

- Ans  1. 234 : 567
- 2. 123 : 456
  - 3. 345 : 678
  - 4. 456 : 798

Question ID : 98958010164  
Status : Answered  
Chosen Option : 4

Q.8 'Disease' is related to 'Pain' in the same way as 'Accident' is related to '\_\_\_\_\_':

- Ans  1. Carelessness
- 2. Injury
  - 3. Driving
  - 4. Collision

Question ID : 98958010144

Q.9 Which two numbers should be interchanged to make the given equation correct?

$$9 + 4 \div 2 - 6 \times 3 = 4 \div 3 \times 6 - 9 + 1$$

- Ans
- 1. 6 and 4
  - 2. 4 and 9
  - 3. 4 and 2
  - 4. 6 and 3

Question ID : 98958010169  
Status : Not Answered  
Chosen Option : --

Q.1 Select the option that is related to the third number in the same way as the second number is related to the first number.

0

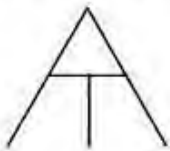
$$24 : 13 :: 38 : \underline{\hspace{2cm}}$$

- Ans
- 1. 20
  - 2. 23
  - 3. 17
  - 4. 25

Question ID : 98958010160  
Status : Answered  
Chosen Option : 1

Q.1 Select the option in which the given figure is embedded.

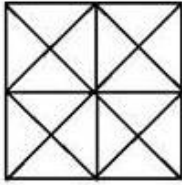
1



Ans

- 1.
- 2.
- 3.

4.



Question ID : 98958010177  
Status : Not Answered  
Chosen Option : --

Q.1  
2 Which number will replace the question mark (?) in the following series?

0, 1, 5, 14, 30, ?

- Ans  1. 43  
 2. 53  
 3. 46  
 4. 55

Question ID : 98958010157  
Status : Not Answered  
Chosen Option : --

Q.1  
3 Which letter-cluster will replace the question mark (?) in the following series?

BECD, FIGH, KNLM, ?, XAYZ

- Ans  1. ORPQ  
 2. QWSU  
 3. QTRS  
 4. PSQR

Question ID : 98958010137  
Status : Answered  
Chosen Option : 4

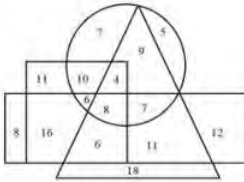
Q.1  
4 Three of the following four words are alike in a certain way and one is different. Find the odd one out.

- Ans  1. Rhombus  
 2. Parallelogram  
 3. Hexagon  
 4. Ellipse

Question ID : 98958010143  
Status : Answered  
Chosen Option : 4

Q.1  
5

In the following diagram, the triangle represents 'actors', the circle represents 'male', the rectangle represents 'painters' and the square represents 'artists'. The numbers in different segments show the number of persons.



How many male actors are painters but not artists?

- Ans  1. 7  
 2. 8  
 3. 13  
 4. 15

Question ID : 98958010185

Status : Answered

Chosen Option : 3

Q.1 Select the word-pair in which the two words are related in the same way as are the two words in the given word-pair.  
6

Circle : Circumference

- Ans  1. Plane : Dimension  
 2. Rectangle : Perimeter  
 3. Square : Diagonal  
 4. Triangle : Area

Question ID : 98958010146

Status : Answered

Chosen Option : 2

Q.1 Which number will replace the question mark (?) in the following series?  
7

3, 4, 7, 11, 18, ?

- Ans  1. 29  
 2. 31  
 3. 25  
 4. 22

Question ID : 98958010156

Status : Answered

Chosen Option : 1

Q.1 Select the option that is related to the third term in the same way as the second term is related to the first term.  
8

HKNQ : JIPO :: DGJM : \_\_\_\_\_

- Ans  1. FENO  
 2. FEJK  
 3. EELK

✓ 4. FELK

Question ID : 98958010148  
Status : Answered  
Chosen Option : 4

Q.1 9 Two statements are given, followed by three conclusions numbered I, II and III. Assuming the statements to be true, even if they seem to be at variance with commonly known facts, decide which of the conclusions logically follow(s) from the statements.

**Statements:**

Some rivers are brooks.  
No brook is a stream.

**Conclusions:**

- I. No stream is a brook.
- II. Some streams are rivers.
- III. Some brooks are rivers.

Ans ✓ 1. Only conclusions I and III follow.

✗ 2. Only conclusion I follows.

✗ 3. Only conclusions I and II follow.

✗ 4. Only conclusions II and III follow.

Question ID : 98958010155  
Status : Answered  
Chosen Option : 1

Q.2 0 Select the option that is related to the third number in the same way as the second number is related to the first number.

6 : 35 :: 9 : \_\_\_\_\_

Ans ✓ 1. 80

✗ 2. 65

✗ 3. 85

✗ 4. 99

Question ID : 98958010159  
Status : Answered  
Chosen Option : 1

Q.2 1 If CAB = 13 and FEED = 41, then JADE = \_\_\_\_\_.

Ans ✗ 1. 35

✗ 2. 43

✗ 3. 45

✓ 4. 41

Question ID : 98958010152  
Status : Answered  
Chosen Option : 4

Q.2 2 Three of the following four number-pairs are alike in a certain way and one is different. Find the odd one out.

Ans ✗ 1. 9 : 26



2. 49 : 82

3. 36 : 63

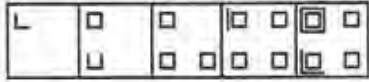
4. 25 : 50

Question ID : 98958010165

Status : Answered

Chosen Option : 4

Q.2  
3 Select the figure that will come next in the following series.



Ans



Question ID : 98958010172

Status : Answered

Chosen Option : 1

Q.2  
4 Three of the following four words are alike in a certain way and one is different. Find the odd one out.

Ans  1. Mercury

2. Mars

3. Moon

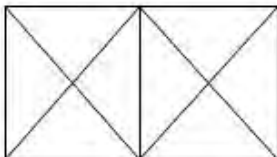
4. Venus

Question ID : 98958010142

Status : Answered

Chosen Option : 3

Q.2  
5 How many triangles are there in the following figure?



Ans  1. 14

2. 16

3. 18

4. 10

Question ID : 98958010174

Status : Answered

Chosen Option : 4

Q.2 Select the option that is related to the third term in the same way as the second term is related to the first term.

6

ATKR : FYPW :: TLPG: \_\_\_\_\_.

- Ans
- 1. YTQL
  - 2. XTQL
  - 3. XQTL
  - 4. YQUL

Question ID : 98958010149

Status : Not Answered

Chosen Option : --

Q.2 Select the word pair in which the two words are related in the same way as are the two words in the given word-pair.

7

Small : Dimension

- Ans
- 1. Heat : Temperature
  - 2. Heavy : Weight
  - 3. Triangle : Area
  - 4. Cold : Winter

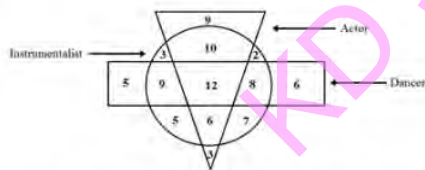
Question ID : 98958010147

Status : Not Answered

Chosen Option : --

Q.2 In the following diagram, the triangle represents 'actors', the circle represents 'instrumentalists' and the rectangle represents 'dancers'. The numbers in different segments show the number of persons.

8



How many dancers are instrumentalists but not actors?

- Ans
- 1. 12
  - 2. 20
  - 3. 17
  - 4. 21

Question ID : 98958010184

Status : Answered

Chosen Option : 3

Q.2

9

Two statements are given, followed by three conclusions numbered I, II and III. Assuming the statements to be true, even if they seem to be at variance with commonly known facts, decide which of the conclusions logically follow(s) from the statements.

**Statements:**

All computers are instruments.  
Some machines are computers.

**Conclusions:**

- I. All instruments are computers.
- II. Some machines are instruments.
- III. Some instruments are machines.

- Ans
- 1. Only conclusions I and III follow.
  - 2. All the conclusions follow.
  - 3. Only conclusions II and III follow.
  - 4. Only conclusions I and II follow.

Question ID : 98958010154

Status : Answered

Chosen Option : 3

Q.3 Which two signs should be interchanged to make the following equation correct?

$$18 + 12 \times 8 - 6 \div 3 = 9$$

- Ans
- 1.  $\times$  and  $\div$
  - 2.  $+$  and  $\times$
  - 3.  $\div$  and  $+$
  - 4.  $-$  and  $\times$

Question ID : 98958010168

Status : Not Answered

Chosen Option : --

Q.3 Three of the following four number-pairs are alike in a certain way and one is different. Find the odd one out.

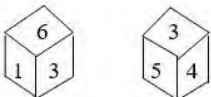
- Ans
- 1. 24 : 48
  - 2. 48 : 84
  - 3. 36 : 63
  - 4. 56 : 75

Question ID : 98958010163

Status : Answered

Chosen Option : 4

Q.3 Two positions of the same dice are given. Which number will be at the bottom if '4' is at the top?



- Ans
- 1. 3
  - 2. 1
  - 3. 2

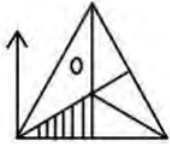
✗ 4. 6

Question ID : 98958010175

Status : Answered

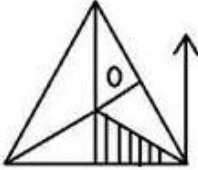
Chosen Option : 2

Q.3 Select the correct mirror image of the given figure when the mirror is placed on the right of the figure.  
3

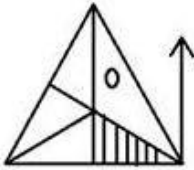


Ans

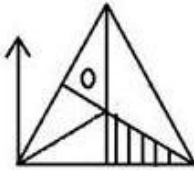
✗ 1.



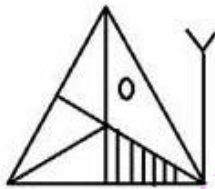
✓ 2.



✗ 3.



✗ 4.



Question ID : 98958010178

Status : Answered

Chosen Option : 1

Q.3 If FAKE is coded as 52106 and MAD is coded as 1225, then how will DEER be coded as?  
4

Ans ✗ 1. 36420

✗ 2. 35418

✗ 3. 47520

✓ 4. 36419

Question ID : 98958010153

Status : Not Answered

Chosen Option : --

Q.3 Three of the following four letter-clusters are alike in a certain way and one is different. Find the odd one out.  
5

Ans

- 1. QSUW
- 2. MNOQ
- 3. BDFH
- 4. EGIK

Question ID : 98958010140  
Status : Answered  
Chosen Option : 2

Q.3  
6 Select the set of numbers that is similar to the following set.

{9, 16, 23}

- Ans
- 1. {16, 25, 32}
  - 2. {7, 15, 25}
  - 3. {15, 24, 33}
  - 4. {4, 9, 16}

Question ID : 98958010166  
Status : Not Answered  
Chosen Option : --

Q.3  
7 'Bird' is related to 'Wings' in the same way as 'Fish' is related to '\_\_\_\_\_ '.

- Ans
- 1. Fins
  - 2. Gills
  - 3. Belly
  - 4. Scales

Question ID : 98958010145  
Status : Answered  
Chosen Option : 2

Q.3  
8 In a code language, BACHELOR is written as SNMDIBBA. How will COHESION be written as in that language?

- Ans
- 1. ONJRFGPB
  - 2. BPJTFINO
  - 3. ONIFTJBP
  - 4. NPHTDIND

Question ID : 98958010151  
Status : Not Answered  
Chosen Option : --

Q.3  
9 Select the set of numbers that is similar to the following set.

{10, 19, 32}

Ans  1. {5, 14, 19}

2. {12, 25, 49}

3. {7, 13, 23}

4. {3, 7, 10}

Question ID : 98958010167  
Status : Not Answered  
Chosen Option : --

Q.4 Three of the following four letter-clusters are alike in a certain way and one is different. Find the odd one out.

0

Ans  1. TVUW

2. HPKM

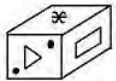
3. BFDH

4. KQNT

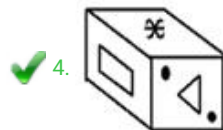
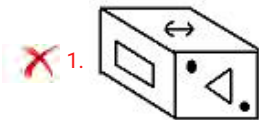
Question ID : 98958010141  
Status : Answered  
Chosen Option : 1

Q.4 Select the correct mirror image of the given figure when the mirror is placed on the right of the figure.

1



Ans



Question ID : 98958010179  
Status : Answered  
Chosen Option : 4

Q.4 Select the number-pair in which the two numbers are related in the same way as are the two numbers in the given pair.

2

65 : 126

Ans  1. 26 : 65

2. 9 : 28

3. 37 : 50



4. 2 : 10

Question ID : 98958010161

Status : Not Answered

Chosen Option : --

Q.4 After starting from his house, Naren walked a few meters towards the east. From there, he took a right turn and walked 80 m, and then took a left turn and walked 20 m. Finally, he took a right turn again and walked 40 m to reach the hospital. If the air distance between his house and the hospital is 130 m, how far did Naren walk towards the east initially?

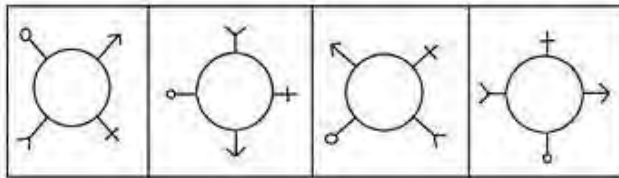
- Ans
- 1. 40 m
  - 2. 30 m
  - 3. 25 m
  - 4. 50 m

Question ID : 98958010182

Status : Answered

Chosen Option : 2

Q.4 Select the figure that will come next in the following series.



Ans

- 1.
- 2.
- 3.
- 4.

Question ID : 98958010173

Status : Answered

Chosen Option : 1

Q.4  
5

Which letter will replace the question mark (?) in the following series?

B, D, G, I, L, ?, Q

- Ans
- 1. P
  - 2. O
  - 3. M
  - 4. N

Question ID : 98958010136

Status : Answered

Chosen Option : 4

Q.4 Select the correct alternative to indicate the arrangement of the following words in a logical and meaningful order.

6

1. Diagnosis
2. Recovery
3. Pain
4. Treatment
5. Hospital

- Ans
- 1. 3, 5, 4, 1, 2
  - 2. 3, 5, 1, 4, 2
  - 3. 5, 1, 4, 1, 2
  - 4. 5, 3, 1, 4, 2

Question ID : 98958010138

Status : Answered

Chosen Option : 1

Q.4 Rakesh starts walking from his house and then takes two left turns and one right turn to reach the market. If he is facing north on reaching the market, in which direction was Rakesh facing when he started from his house?

7

- Ans
- 1. North
  - 2. South
  - 3. West
  - 4. East

Question ID : 98958010181

Status : Answered

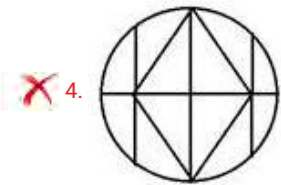
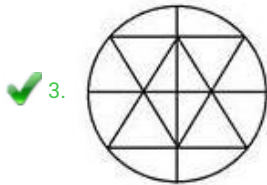
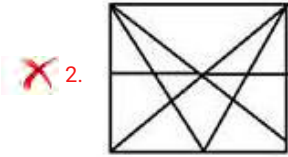
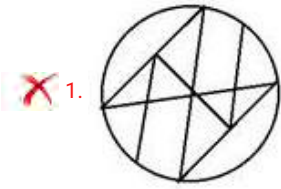
Chosen Option : 4

Q.4 Select the option in which the given figure is embedded. (Rotation is not allowed)

8



Ans



Question ID : 98958010176  
Status : Not Answered  
Chosen Option : --

Q.4 Select the correct alternative to indicate the arrangement of the following words in a logical and meaningful order.

9

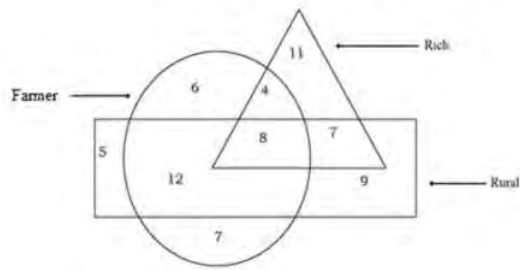
1. Injury
2. Recovery
3. Accident
4. Showroom
5. Drive
6. Car

- Ans  1. 4, 6, 5, 3, 2, 1
2. 4, 6, 5, 3, 1, 2
3. 5, 6, 3, 2, 1, 4
4. 6, 4, 3, 5, 1, 2

Question ID : 98958010139  
Status : Answered  
Chosen Option : 2

Q.5  
0

In the following diagram, the triangle represents 'rich', the circle represents 'Farmer' and the rectangle represents 'rural'. The numbers in different segments show the number of persons.



How many rich Farmers are not rural?

- Ans  1. 8  
 2. 4  
 3. 7  
 4. 12

Question ID : 98958010183  
 Status : Answered  
 Chosen Option : 2

Q.5 \_\_\_\_\_ is the first greenfield airport to be constructed in the northeastern region of India.

- Ans  1. Paro  
 2. Bagdogra International  
 3. Pakyong  
 4. Lengpui

Question ID : 98958010245  
 Status : Answered  
 Chosen Option : 3

Q.5 \_\_\_\_\_ won at the Australian Open Women's Double Championship in January 2019.

- Ans  1. Zhang Shuai and Samantha Stosur  
 2. Timea Babos and Barbora Krejckikova  
 3. Barbora Krejckikova and Katerina Siniakova  
 4. Timea Babos and Kristina Mladenovic

Question ID : 98958010268  
 Status : Not Answered  
 Chosen Option : --

Q.5 The Khalji or Khilji dynasty, founded by Jalal-ud-din Firuz Khalji ruled large parts of the Indian subcontinent between \_\_\_\_\_

- Ans  1. 1320 and 1377  
 2. 1190 and 1220  
 3. 1290 and 1320  
 4. 1220 and 1290

Question ID : 98958010242  
Status : Not Answered  
Chosen Option : --

Q.5 The \_\_\_\_\_ in Kanyakumari was awarded the 'International Gandhi Peace Prize (2015) for its contribution to rural development, education and development of natural resources.

- Ans
- 1. Saanjh Kendra
  - 2. Vivekananda Kendra
  - 3. Sewa Kendra
  - 4. Akshaya Kendra

Question ID : 98958010237  
Status : Not Answered  
Chosen Option : --

Q.5 A January 2019 study by the scientists from National Chemical Laboratory, Pune suggested measuring levels of free albumin and albumin attached to glucose molecules in the blood as a diagnostic test for \_\_\_\_\_.

- Ans
- 1. Diabetes
  - 2. Thyroid
  - 3. Piles
  - 4. Tuberculosis

Question ID : 98958010239  
Status : Not Answered  
Chosen Option : --

Q.5 In September 2018, \_\_\_\_\_ won the Duleep Trophy by defeating defending champion India Red at NPR College Ground in Dindigul, Tamil Nadu.

- Ans
- 1. India Black
  - 2. India Green
  - 3. India Blue
  - 4. India Yellow

Question ID : 98958010254  
Status : Not Answered  
Chosen Option : --

Q.5 Prior to September 2018, \_\_\_\_\_ was the sole state in India without a functional airport.

- Ans
- 1. Mizoram
  - 2. Sikkim
  - 3. Assam
  - 4. Nagaland

Question ID : 98958010278  
Status : Answered  
Chosen Option : 2

Q.5

8 The Union Government bestows national sports awards every year to recognize and reward excellence in sports in India. Which of the following is NOT one of these awards?

- Ans
- 1. Dhyan Chand Award
  - 2. Khelo India Award
  - 3. Dronacharya Award
  - 4. Arjuna Award

Question ID : 98958010251  
Status : Answered  
Chosen Option : 1

Q.5 \_\_\_\_\_ is a support scheme of Odisha whose primary targets are small farmers, cultivators and landless agricultural labourers.

- Ans
- 1. Aahar Yojana (AY)
  - 2. Khushi Scheme
  - 3. Asha Assistance for Livelihood and Income Augmentation (AALIA)
  - 4. Krushak Assistance for Livelihood and Income Augmentation (KALIA)

Question ID : 98958010256  
Status : Not Answered  
Chosen Option : --

Q.6 Megasthenes, a Greek historian visited India in the reign of \_\_\_\_\_ in the 4th century B.C.

- Ans
- 1. Chandragupta Maurya
  - 2. Ashoka
  - 3. Alexander
  - 4. Bindusara

Question ID : 98958010265  
Status : Answered  
Chosen Option : 1

Q.6 The Swadesh Darshan Scheme aims to promote international and domestic tourism across India. Which of the following is NOT one of the 13 thematic circuits under the scheme of the Ministry of Tourism?

- Ans
- 1. Tribal Circuit
  - 2. Mahabharata Circuit
  - 3. Ramayana Circuit
  - 4. Desert Circuit

Question ID : 98958010277  
Status : Not Answered  
Chosen Option : --

Q.6 'Red Tape' in an economy refers to:

Ans



- 1. Rigid excise rules
- 2. Low Risk Market
- 3. High Risk Market
- 4. Rigid conformity to formal rules

Question ID : 98958010276  
Status : Answered  
Chosen Option : 2

Q.6 The monuments of Khajuraho in the state of Madhya Pradesh are fine denotations of the \_\_\_\_\_ dynasty.  
3

- Ans
- 1. Chola
  - 2. Chandela
  - 3. Chalukya
  - 4. Pallava

Question ID : 98958010263  
Status : Not Answered  
Chosen Option : --

Q.6 The Judges of the Supreme Court are appointed by the President under Article \_\_\_\_\_ of the Constitution of India.  
4

- Ans
- 1. 21
  - 2. 217
  - 3. 124(2)
  - 4. 224(1)

Question ID : 98958010238  
Status : Not Answered  
Chosen Option : --

Q.6 The \_\_\_\_\_ is an ancient Indian treatise on statecraft, economic policy and military strategy that was written in Sanskrit.  
5 Kautilya is traditionally credited as the author of the text.

- Ans
- 1. Rigveda
  - 2. Arthashastra
  - 3. Charaka Samhita
  - 4. Puranas

Question ID : 98958010266  
Status : Not Answered  
Chosen Option : --

Q.6 \_\_\_\_\_ are called suicidal bags of the cell.  
6

- Ans
- 1. Mitochondria
  - 2. Ribosomes
  - 3. Lysosomes

4. Golgi Apparatus

Question ID : 98958010270  
Status : Not Answered  
Chosen Option : --

Q.6  
7 The city of victory, Fatehpur Sikri in \_\_\_\_\_ was built during the glorious reign of the Mughals.

- Ans
- 1. Aligarh
  - 2. Jaipur
  - 3. Agra
  - 4. Bidar

Question ID : 98958010273  
Status : Not Answered  
Chosen Option : --

Q.6  
8 \_\_\_\_\_ located in Thekkady, Kerala is the perfect example of nature's bounty with great scenic beauty and rich biodiversity.

- Ans
- 1. Pakhal Sanctuary
  - 2. Dachigam National Park
  - 3. Wild Ass Sanctuary
  - 4. Periyar Wildlife Sanctuary

Question ID : 98958010264  
Status : Not Answered  
Chosen Option : --

Q.6  
9 Which of the following is the universal recipient blood group?

- Ans
- 1. O
  - 2. AB
  - 3. A
  - 4. B

Question ID : 98958010275  
Status : Answered  
Chosen Option : 2

Q.7  
0 The \_\_\_\_\_ in the human body controls every activity that you perform.

- Ans
- 1. respiratory system
  - 2. digestive system
  - 3. reproductive system
  - 4. nervous system

Question ID : 98958010272  
Status : Answered

Q.7 \_\_\_\_\_, a one-hour slot on Doordarshan National channel, is an initiative by the Department of Science and Technology along with Doordarshan, Prasar Bharati.

- Ans
- 1. DD Science
  - 2. Science Live
  - 3. Indian Science
  - 4. National Science

Question ID : 98958010284  
Status : Not Answered  
Chosen Option : --

Q.7 In January 2019, the Ministry of \_\_\_\_\_ drafted National Action Plan for Drug Demand Reduction (2018-2023).

- Ans
- 1. Education
  - 2. Social Justice and Empowerment
  - 3. Planning and Development
  - 4. Health

Question ID : 98958010257  
Status : Not Answered  
Chosen Option : --

Q.7 Which of the following is a dance form from Karnataka?

- Ans
- 1. Bayalata
  - 2. Karma
  - 3. Rouf
  - 4. Lava

Question ID : 98958010281  
Status : Not Answered  
Chosen Option : --

Q.7 Where were the first headquarters of the Arya Samaj?

- Ans
- 1. Lahore
  - 2. Bombay
  - 3. Calcutta
  - 4. Nasik

Question ID : 98958010255  
Status : Not Answered  
Chosen Option : --

Q.7 \_\_\_\_\_ is an autonomous organisation under the Department of Science and Technology of the Government of India.

- Ans
- 1. Arogya Prasar (AP)

2. Vigyan Prasar (VP)

3. Prayog Prasar (PP)

4. Vidhan Prasar (VP)

Question ID : 98958010274

Status : Not Answered

Chosen Option : --

Q.7 \_\_\_\_\_, a Moroccan traveller who is known for his extensive travels, came to India during the regime of Muhammad bin Tughlaq.

Ans  1. Ralph Fisch

2. Ibn Battuta

3. Nicoloi

4. Tsang Hi

Question ID : 98958010283

Status : Not Answered

Chosen Option : --

Q.7 The Collegium for the appointment of Judges of Supreme Court is headed by the \_\_\_\_\_ of India.

Ans  1. Chief Justice

2. Parliament

3. President

4. Prime Minister

Question ID : 98958010244

Status : Answered

Chosen Option : 3

Q.7 The Mahabodhi Temple in \_\_\_\_\_ is the pilgrimage site of the Buddhists.

Ans  1. Madhya Pradesh

2. Odisha

3. Assam

4. Bihar

Question ID : 98958010267

Status : Not Answered

Chosen Option : --

Q.7 Which of the following best describe the nature of Indian economy?

Ans  1. Communist Economy

2. Mixed Economy

3. Capitalistic Economy

4. Socialist Economy

Question ID : 98958010285

Status : Answered

Chosen Option : 2

Q.8 In August 2018, India won four bronze medals in the Wushu (Chinese Kung Fu) sporting event at \_\_\_\_\_ held in  
0 Indonesia.

- Ans
- 1. Jakarta-Palembang 2018 Asian Games
  - 2. UEFA Champions League 2018
  - 3. Winter Olympics 2018
  - 4. FIFA Confederations Cup

Question ID : 98958010258

Status : Not Answered

Chosen Option : --

Q.8 Which element is used to make the coils used in water heaters?  
1

- Ans
- 1. Copper
  - 2. A mixture of aluminium and copper
  - 3. Nichrome
  - 4. A mixture of iron and steel

Question ID : 98958010253

Status : Answered

Chosen Option : 2

Q.8 'The Hindu Young World-Good books Award for Best Book 2018: Non-Fiction' was awarded to \_\_\_\_\_, author of the  
2 book 'A Brush with Indian Art' at the Hindu Lit for Life 2019.

- Ans
- 1. Mamta Nainy
  - 2. Vinayak Verma
  - 3. Venita Coelho
  - 4. Rajiv Elipe

Question ID : 98958010236

Status : Not Answered

Chosen Option : --

Q.8 According to the new travel norms set by The Union Home Ministry, Indians aged \_\_\_\_\_ can travel to Nepal and  
3 Bhutan by producing Aadhaar as Identity proof.

- Ans
- 1. under 25 and over 55 years
  - 2. under 10 and over 60 years
  - 3. under 12 and over 55 years
  - 4. under 15 and over 65 years

Question ID : 98958010262

Status : Not Answered

Chosen Option : --

Q.8 The Government of \_\_\_\_\_ has decided to ban the production, sale and use of single-use plastic products from 1 March 2019.

- Ans
- 1. Maharashtra
  - 2. Goa
  - 3. Delhi
  - 4. Puducherry

Question ID : 98958010241  
Status : Not Answered  
Chosen Option : --

Q.8 In humans, fertilisation usually takes place in the \_\_\_\_\_.

- Ans
- 1. Vagina
  - 2. Ovary
  - 3. Fallopian tube
  - 4. Uterus

Question ID : 98958010271  
Status : Answered  
Chosen Option : 2

Q.8 The Union Defence Minister \_\_\_\_\_ inaugurated the Tamil Nadu Defence Industrial Corridor on 20 January 2019.

- Ans
- 1. Nirmala Sitharaman
  - 2. Rajnath Singh
  - 3. Nitin Gadkari
  - 4. Radha Mohan Singh

Question ID : 98958010260  
Status : Answered  
Chosen Option : 1

Q.8 In January 2019, President Ram Nath Kovind appointed senior advocates Sanjay Jain and KM Nataraj as \_\_\_\_\_ of India.

- Ans
- 1. Additional Solicitor Generals
  - 2. Director Generals
  - 3. Secretary Generals
  - 4. Auditor Generals

Question ID : 98958010243  
Status : Not Answered  
Chosen Option : --

Q.8 In January 2019, the Cabinet Committee on Economic Affairs gave its approval for the capacity expansion project of \_\_\_\_\_ Refinery from 3 MMTPA (million metric tonne per annum) to 9 MMTPA.

- Ans
- 1. Essar



- 2. Mathura
- 3. Numaligarh
- 4. Barauni

Question ID : 98958010246  
Status : Not Answered  
Chosen Option : --

Q.8 The 'Vision 2040' document, released at the Global Aviation Summit 2019, estimates that India will need \_\_\_\_\_  
9 airports.

- Ans
- 1. 300
  - 2. 150
  - 3. 250
  - 4. 200

Question ID : 98958010279  
Status : Not Answered  
Chosen Option : --

Q.9 Which of the following is a dance form from Rajasthan?  
0

- Ans
- 1. Dappu
  - 2. Kumi
  - 3. Jhulan
  - 4. Maruni

Question ID : 98958010247  
Status : Not Answered  
Chosen Option : --

Q.9 In January 2019, Prime Minister Narendra Modi was awarded the first ever \_\_\_\_\_ for his outstanding leadership of the nation.  
1

- Ans
- 1. Padma Shri
  - 2. Champions of the Earth Award
  - 3. Philip Kotler Presidential Award
  - 4. Padma Bhushan

Question ID : 98958010240  
Status : Answered  
Chosen Option : 3

Q.9 Standing committee on finance headed by \_\_\_\_\_ was selected for outstanding performance among the Parliamentary  
2 Standing Committees for the Sansad Ratna Awards in Chennai.

- Ans
- 1. M Veerappa Moily
  - 2. Nishikant Dubey
  - 3. NK Premachandran
  - 4. Dhananjay Mahadik

Question ID : 98958010269  
Status : Not Answered  
Chosen Option : --

Q.9 3 Which MP from Baramati (Maharashtra) was honoured with the 'Sansad Ratna Award' in January 2019 in Tamil Nadu?

- Ans
- 1. Supriya Sule
  - 2. Mamtaz Sanghamita
  - 3. Butta Renuka
  - 4. Meenakshi Lekhi

Question ID : 98958010250  
Status : Not Answered  
Chosen Option : --

Q.9 4 Identify the disease caused by the deficiency of Vitamin B1.

- Ans
- 1. Ariboflavinosis
  - 2. Beriberi
  - 3. Rickets
  - 4. Glossitis

Question ID : 98958010252  
Status : Answered  
Chosen Option : 2

Q.9 5 Indian mountaineer \_\_\_\_\_ is the first woman in the world to climb Mount Everest twice and the first woman to successfully climb Mt. Everest from Kangshung Face.

- Ans
- 1. Arunima Sinha
  - 2. Premlata Agrawal
  - 3. Malavath Purna
  - 4. Santosh Yadav

Question ID : 98958010282  
Status : Not Answered  
Chosen Option : --

Q.9 6 In January 2019, Chief Minister of Tripura, Biplab Kumar Deb unveiled the official logo of the state's tea which features \_\_\_\_\_, the iconic landmark of Tripura.

- Ans
- 1. Devtamura
  - 2. Ujjayanta palace
  - 3. Pilak
  - 4. Neermahal palace

Question ID : 98958010261  
Status : Not Answered  
Chosen Option : --

Q.9 7 Enzymes are \_\_\_\_\_ that act as catalysts within the living cells.

- Ans
- 1. vitamins
  - 2. carbohydrates
  - 3. calcium
  - 4. proteins

Question ID : 98958010259  
Status : Answered  
Chosen Option : 4

Q.9 Akbar commissioned \_\_\_\_\_ to chronicle the story of his father Humayun, 'Humayun-nama'.

- Ans
- 1. Jodha Begum
  - 2. Gulbadan Begum
  - 3. Mariam-uz-Zamani
  - 4. Jagat Gosain Begum

Question ID : 98958010249  
Status : Not Answered  
Chosen Option : --

Q.9 According to data released by Central Statistics Office (CSO) in December 2018, factory output measured in terms of Index of Industrial Production (IIP) grew \_\_\_\_\_ in October 2018 as against 4.5% in September 2018.

- Ans
- 1. 8.1%
  - 2. 7.5%
  - 3. 6 %
  - 4. 6.7%

Question ID : 98958010280  
Status : Not Answered  
Chosen Option : --

Q.1 The Tyndal Effect is due to:

- Ans
- 1. Dispersion of Light
  - 2. Reflection of Light
  - 3. Refraction of Light
  - 4. Scattering of Light

Question ID : 98958010248  
Status : Not Answered  
Chosen Option : --

Q.1 The price of sugar is decreased by 10%. By what percent can a person increase the consumption so that there is no change in the expenditure?

- Ans
- 1.  $\frac{100}{9}$  %
  - 2. 10%

3.  $\frac{109}{11}\%$

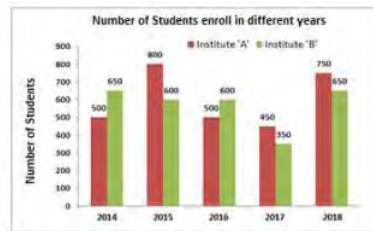
4.  $\frac{100}{11}\%$

Question ID : 98958010348

Status : Answered

Chosen Option : 1

Q.1  
02



In the given bar graph, the percentage decrease in the number of students in Institute A in 2016 is what percent of students in 2015.

Ans  1. 39.5%

2. 40.5%

3. 37.5%

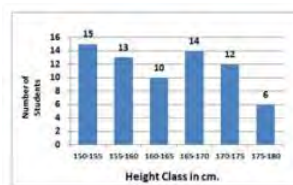
4. 35.5%

Question ID : 98958010378

Status : Answered

Chosen Option : 3

Q.1  
03



In the given histogram, the number of students whose height is in the class interval 175 - 180 is what percent less than the number of students whose height is in the class interval 160 - 165?

Ans  1.  $\frac{50}{3}\%$

2. 40%

3. 60%

4.  $\frac{200}{3}\%$

Question ID : 98958010385

Status : Not Answered

Chosen Option : --

Q.1  
04

If  $(2x + 3)^3 + (x - 8)^3 + (x + 13)^3 = (2x + 3)(3x - 24)(x + 13)$ , then what is the value of  $x$ ?

Ans  1. -1

2. -1.5

3. -2.5

4. -2

Question ID : 98958010368

Status : Answered

Chosen Option : 1

Q.1 05 6 cubes, each of edge 4 cm, are joined end to end. What is the total surface area of the resulting cuboid?

- Ans
- 1.  $416 \text{ cm}^2$
  - 2.  $496 \text{ cm}^2$
  - 3.  $576 \text{ cm}^2$
  - 4.  $208 \text{ cm}^2$

Question ID : 98958010363

Status : Not Answered

Chosen Option : --

Q.1 06 In a class of 45 students, 40% are girls and the remaining are boys. The average marks of the girls is 64 and that of the boys is 60. What is the average marks of the whole class?

- Ans
- 1. 61.8
  - 2. 61.6
  - 3. 62.9
  - 4. 62.4

Question ID : 98958010343

Status : Answered

Chosen Option : 2

Q.1 07 The efficiency of A, B and C are in the ratio 5 : 6 : 9. Working together, they can complete a work in 18 days. In how many days can B alone complete 25% of that work?

- Ans
- 1. 15
  - 2. 16
  - 3. 18
  - 4. 10

Question ID : 98958010356

Status : Not Answered

Chosen Option : --

Q.1 08 If  $a^3 + b^3 = 5824$  and  $a + b = 28$ , then  $(a - b)^2 + ab$  is equal to:

- Ans
- 1. 152
  - 2. 208
  - 3. 180
  - 4. 236

Question ID : 98958010367

Status : Not Answered

Chosen Option : --

Q.1 09 In an examination, 48% of candidates passed in science and 56% failed in mathematics. If 32% failed in both subjects, then what percent passed in both subjects?

Ans

- 1. 22%
- 2. 32%
- 3. 24%
- 4. 28%

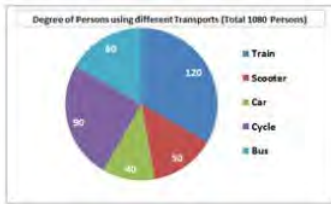
Question ID : 98958010349  
 Status : Answered  
 Chosen Option : 1

Q.1 10 Two numbers are in the ratio 4 : 7. If their HCF is 26, then the sum of these two numbers will be:

- Ans
- 1. 312
  - 2. 286
  - 3. 338
  - 4. 364

Question ID : 98958010338  
 Status : Answered  
 Chosen Option : 2

Q.1 11



In the given pie-chart, the number of persons using a car is what percentage of persons using a scooter?

- Ans
- 1. 80%
  - 2. 75%
  - 3. 60%
  - 4. 50%

Question ID : 98958010380  
 Status : Answered  
 Chosen Option : 1

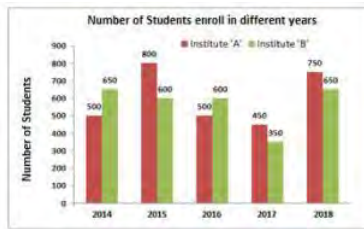
Q.1 12 The income of A is 24% more than the income of B. By what percent is the income of B less than the income of A?

- Ans
- 1.  $\frac{150}{7}$  %
  - 2.  $\frac{600}{31}$  %
  - 3.  $\frac{500}{31}$  %
  - 4.  $\frac{600}{29}$  %

Question ID : 98958010347  
 Status : Answered  
 Chosen Option : 2



Q.1  
13



In the given bar graph, the number of students enrolled in institute B in the year 2016 is what percentage of students enrolled in institute A in 2016?

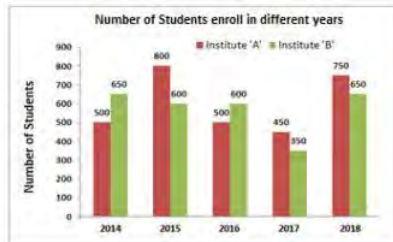
- Ans
- 1.  $\frac{325}{6}$  %
  - 2.  $\frac{250}{3}$  %
  - 3. 120%
  - 4. 85%

Question ID : 98958010379

Status : Answered

Chosen Option : 3

Q.1  
14



In the given bar graph, what is the ratio of students of A and B in the combine strength from 2016 to 2018?

- Ans
- 1. 20 : 19
  - 2. 21 : 23
  - 3. 23 : 21
  - 4. 19 : 20

Question ID : 98958010377

Status : Not Answered

Chosen Option : --

Q.1 PA and PB are two tangents from a point P outside a circle with centre O. If A and B are points on the circle such that  $\angle APB = 80^\circ$ , then  $\angle OAB$  is equal to:

- Ans
- 1.  $55^\circ$
  - 2.  $45^\circ$
  - 3.  $40^\circ$
  - 4.  $50^\circ$

Question ID : 98958010370

Status : Not Answered

Chosen Option : --

Q.1 If the seven digit number  $74x29y6$  is divisible by 72, then what will be the value of  $(2x + 3y)$ ?

- Ans
- 1. 21

- 2. 19
- 3. 16
- 4. 20

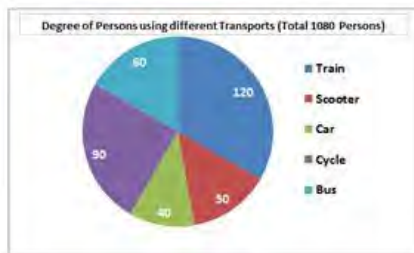
Question ID : 98958010337  
Status : Answered  
Chosen Option : 2

Q.1  
17 The square root of which of the following is a rational number?

- Ans
- 1. 2460.14
  - 2. 1489.96
  - 3. 5823.82
  - 4. 22504.9

Question ID : 98958010336  
Status : Answered  
Chosen Option : 3

Q.1  
18



In the given pie-chart, how many persons are using train to reach their workplace?

- Ans
- 1. 380
  - 2. 320
  - 3. 360
  - 4. 400

Question ID : 98958010381  
Status : Answered  
Chosen Option : 4

Q.1  
19 The radius of a cylinder is increased by 120% and its height is decreased by 40%. What is the percentage increase in its volume?

- Ans
- 1. 175.4%
  - 2. 190.4%
  - 3. 180.6%
  - 4. 212.8%

Question ID : 98958010365  
Status : Not Answered  
Chosen Option : --

Q.1  
20 If a train runs with the speed of 48 km/h, it reaches its destination late by 12 minutes. However, if its speed in 64 km/h it is late by 3 minutes only. The right time for the train to cover its journey (in minutes) is:

- Ans
- 1. 18

- 2. 22
- 3. 20
- 4. 24

Question ID : 98958010359  
 Status : Not Answered  
 Chosen Option : --

Q.1 The average of 18 numbers is 52. The average of the first 8 numbers is 62 and the average of the next 7 numbers is 45.  
 21 If the 16<sup>th</sup> number is 6 less than the 17<sup>th</sup> number and the 17<sup>th</sup> number is one more than the 18<sup>th</sup> number, then what is the average of the 16<sup>th</sup> and 18<sup>th</sup> numbers?

- Ans
- 1. 39.5
  - 2. 40
  - 3. 40.5
  - 4. 39

Question ID : 98958010344  
 Status : Not Answered  
 Chosen Option : --

Q.1  
 22  $5\frac{5}{6} + \left[ 2\frac{2}{3} - \left\{ 3\frac{3}{4} \left( 3\frac{4}{5} \div 9\frac{1}{2} \right) \right\} \right]$  is equal to:

- Ans
- 1.  $\frac{43}{6}$
  - 2.  $\frac{44}{7}$
  - 3. 7
  - 4.  $\frac{22}{3}$

Question ID : 98958010341  
 Status : Answered  
 Chosen Option : 3

Q.1  
 23 Let  $\Delta ABC \sim \Delta QPR$  and  $\frac{ar(\Delta ABC)}{ar(\Delta PQR)} = \frac{9}{16}$ . If AB = 12 cm, BC = 6 cm and AC = 9 cm, then PR is equal to:

- Ans
- 1. 12 cm
  - 2. 9 cm
  - 3. 16 cm
  - 4. 8 cm

Question ID : 98958010372  
 Status : Answered  
 Chosen Option : 4

Q.1  
 24  $\frac{5.75 \times 5.75 \times 5.75 + 3.25 \times 3.25 \times 3.25}{57.5 \times 57.5 + 32.5 \times 32.5 - 57.5 \times 32.5}$  is equal to:

- Ans
- 1. 0.09
  - 2. 0.9
  - 3. 0.0009

4. 0.009

Question ID : 98958010342  
Status : Answered  
Chosen Option : 2

Q.1 25 The sides of a triangle are 8 cm, 15 cm, and 17 cm respectively. At each of its vertices, circles of radius 3.5 cm are drawn. What is the area of the triangle excluding the portion covered by the sectors of the circles ( $\pi = \frac{22}{7}$ )?

- Ans
- 1. 40.75 cm<sup>2</sup>
  - 2. 47 cm<sup>2</sup>
  - 3. 21.5 cm<sup>2</sup>
  - 4. 23.5 cm<sup>2</sup>

Question ID : 98958010362  
Status : Not Answered  
Chosen Option : --

Q.1 26 A shopkeeper sold two articles for ₹ 9831 each. On one he gained 13% and on the other, he lost 13%. What is the overall percentage gain or loss?

- Ans
- 1. 1.69% gain
  - 2. 6.5% gain
  - 3. 6.5% loss
  - 4. 1.69% loss

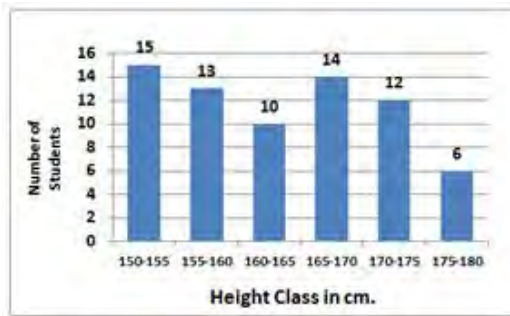
Question ID : 98958010350  
Status : Answered  
Chosen Option : 4

Q.1 27 The value of  $\frac{\sin 30^\circ - \cos 60^\circ + \cot^2 45^\circ}{\cos 30^\circ - \tan 45^\circ + \sin 90^\circ}$  is equal to:

- Ans
- 1.  $\frac{3}{2}$
  - 2.  $\frac{2\sqrt{3}}{3}$
  - 3.  $\frac{\sqrt{3}}{4}$
  - 4.  $\frac{\sqrt{3}}{2}$

Question ID : 98958010374  
Status : Answered  
Chosen Option : 2

Q.1 28



In the given histogram, which class is the median class?

- Ans
- 1. 150 - 155
  - 2. 155 - 160
  - 3. 160 - 165
  - 4. 165 - 175

Question ID : 98958010384  
 Status : Not Answered  
 Chosen Option : --

Q.1 29 What is the sum of the digits of the least number, which when divided by 12, 16 and 54, leaves the same remainder 7 in each case, and is also completely divisible by 13?

- Ans
- 1. 36
  - 2. 27
  - 3. 9
  - 4. 16

Question ID : 98958010339  
 Status : Not Answered  
 Chosen Option : --

Q.1 30 The successive discount of 25%, 20% and 10% is equivalent to a single discount of:

- Ans
- 1. 54%
  - 2. 46%
  - 3. 48%
  - 4. 44%

Question ID : 98958010346  
 Status : Answered  
 Chosen Option : 2

Q.1 31 A, B and C started a business by investing ₹ 55,000, ₹ 65,000 and ₹ 75,000 respectively. A is a working partner and gets 20% of the profit as working allowance and remaining is distributed in the proportion of their investment. If the money received by C is ₹ 27,000 what is the total profit?

- Ans
- 1. ₹ 70,200
  - 2. ₹ 85,500
  - 3. ₹ 76,850
  - 4. ₹ 87,750

Question ID : 98958010352

Status : Answered

Chosen Option : 3

Q.1 32 Pipes A and B can fill a tank in 6 hours and 8 hours respectively and pipe C can empty the full tank in 12 hours. All three pipes are opened together, but pipe A is closed after 3 hours. In how many hours will the remaining part of the tank be filled?

- Ans
- 1. 12
  - 2. 10
  - 3. 11
  - 4. 9

Question ID : 98958010357

Status : Answered

Chosen Option : 1

Q.1 33 A ladder leaning against a wall makes an angle  $\theta$  with the horizontal ground such that  $\sin \theta = \frac{12}{13}$ . If the foot of the ladder is 7.5 m from the wall, then what is the height of the point where the top of the ladder touches the wall?

- Ans
- 1. 15 m
  - 2. 12 m
  - 3. 18 m
  - 4. 8 m

Question ID : 98958010375

Status : Answered

Chosen Option : 3

Q.1 34 From the top of a 12 m high building, the angle of elevation of the top of a tower is  $60^\circ$  and the angle of depression of the foot of the tower is  $\theta$ , such that  $\tan \theta = \frac{3}{4}$ . What is the height of the tower ( $\sqrt{3} = 1.73$ )?

- Ans
- 1. 37.95 m
  - 2. 39.68 m
  - 3. 41.41 m
  - 4. 36.22 m

Question ID : 98958010376

Status : Not Answered

Chosen Option : --

Q.1 35 If  $x - \frac{1}{x} = 6$ , then  $x^3 - \frac{1}{x^3}$  is equal to:

- Ans
- 1. 198
  - 2. 234
  - 3. 216
  - 4. 176

Question ID : 98958010366

Status : Answered

Chosen Option : 1

Q.1



36 36 persons working 8 hours a day can do 3 units of work in 12 days. How many persons are required to do 5 units of that work in 16 days, if they work for 6 hours a day?

- Ans
- 1. 45
  - 2. 50
  - 3. 55
  - 4. 60

Question ID : 98958010355  
Status : Answered  
Chosen Option : 4

Q.1 In  $\Delta ABC$ ,  $\angle A = 30^\circ$ . If the bisectors of the angle B and angle C meet at a point O in the interior of the triangle, then  
37  $\angle BOC$  is equal to:

- Ans
- 1.  $105^\circ$
  - 2.  $90^\circ$
  - 3.  $75^\circ$
  - 4.  $120^\circ$

Question ID : 98958010371  
Status : Answered  
Chosen Option : 1

Q.1 Two pipes A and B can fill an empty tank in 8 hours and 12 hours respectively. They are opened alternately for 1 hour each, starting with pipe A first. In how many hours will the empty tank be filled?  
38

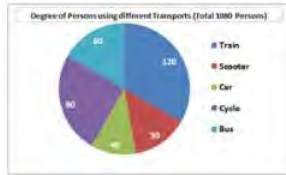
- Ans
- 1.  $9\frac{1}{2}$
  - 2.  $9\frac{1}{3}$
  - 3. 9
  - 4.  $9\frac{1}{4}$

Question ID : 98958010358  
Status : Answered  
Chosen Option : 2

Q.1 A sum of ₹ 12,800 is invested partly at 15% per annum and the remaining at 12% per annum simple interest. If the total  
39 interest at the end of 3 years is ₹ 5,085, then how much money was invested at 15% per annum?

- Ans
- 1. ₹ 5,300
  - 2. ₹ 7,500
  - 3. ₹ 5,200
  - 4. ₹ 5,800

Question ID : 98958010353  
Status : Not Answered  
Chosen Option : --



In the given pie-chart, what is the ratio of the total number of persons using train and car together to the total number of persons using other modes of transport to reach their workplace?

- Ans
- 1. 5 : 6
  - 2. 4 : 5
  - 3. 5 : 3
  - 4. 3 : 5

Question ID : 98958010382  
 Status : Not Answered  
 Chosen Option : --

Q.1 41 A sphere of radius 5 cm is melted and recast into spheres of radius 2 cm each. How many such spheres can be made?

- Ans
- 1. 16
  - 2. 17
  - 3. 18
  - 4. 15

Question ID : 98958010364  
 Status : Not Answered  
 Chosen Option : --

Q.1 42 A shopkeeper marks his good at a price such that after giving a discount of 25%, the gains 20%. If the marked price of the article is ₹ 736, what is the cost price of the article?

- Ans
- 1. ₹ 460
  - 2. ₹ 440
  - 3. ₹ 455
  - 4. ₹ 450

Question ID : 98958010345  
 Status : Answered  
 Chosen Option : 1

Q.1 43 The value of  $3\frac{1}{5} - [2\frac{1}{2} - \{\frac{5}{6} - (\frac{2}{5} + \frac{3}{10} - \frac{4}{15})\}]$  is:

- Ans
- 1.  $\frac{6}{5}$
  - 2.  $\frac{13}{5}$
  - 3.  $\frac{9}{10}$
  - 4.  $\frac{11}{10}$

Question ID : 98958010340  
 Status : Not Answered

Chosen Option : --

Q.1 What is the ratio of the mean proportional between 8.1 and 3.6 and the third proportional of 2 and 3?

44

- Ans
- 1. 5 : 6
  - 2. 5 : 4
  - 3. 4 : 5
  - 4. 6 : 5

Question ID : 98958010351

Status : Not Answered

Chosen Option : --

Q.1 If  $\tan 3x = \cot (30^\circ + 2x)$ , then what is the value of  $x$  ?

45

- Ans
- 1.  $18^\circ$
  - 2.  $15^\circ$
  - 3.  $10^\circ$
  - 4.  $12^\circ$

Question ID : 98958010373

Status : Answered

Chosen Option : 4

Q.1 A boat can go 30 km downstream and 24 km upstream in 2 hours 27 minutes. Also, it can go 10 km downstream and 4 km upstream in 37 minutes. What is the speed of the boat upstream (in km/h)?

46

- Ans
- 1. 22
  - 2. 18
  - 3. 20
  - 4. 24


Question ID : 98958010360

Status : Not Answered

Chosen Option : --

Q.1

47



In the given histogram, what is the percentage of students whose height is in the class interval 165 - 170?

- Ans
- 1. 20%
  - 2. 18%
  - 3. 15%
  - 4. 25%

Question ID : 98958010383

Status : Not Answered

Chosen Option : --

Q.1 48 A sum of ₹ 18,000 is invested for 16 months at 8% per annum compounded half-yearly. What is the percentage gain at the end of 16 months, to the nearest whole number?

- Ans
- 1. 11%
  - 2. 12%
  - 3. 9%
  - 4. 10%

Question ID : 98958010354  
Status : Not Answered  
Chosen Option : --

Q.1 49 ABCD is a cyclic quadrilateral such that AB is the diameter of the circle circumscribing it and  $\angle ADC = 145^\circ$ . What is the measure of  $\angle BAC$ ?

- Ans
- 1.  $35^\circ$
  - 2.  $55^\circ$
  - 3.  $40^\circ$
  - 4.  $50^\circ$

Question ID : 98958010369  
Status : Answered  
Chosen Option : 2

Q.1 50 One side of a rhombus is 13 cm and one of its diagonals is 24 cm. What is the area of the rhombus?

- Ans
- 1.  $156 \text{ cm}^2$
  - 2.  $312 \text{ cm}^2$
  - 3.  $130 \text{ cm}^2$
  - 4.  $120 \text{ cm}^2$

Question ID : 98958010361  
Status : Answered  
Chosen Option : 4

Q.1 51 Select the wrongly spelt word.

- Ans
- 1. mysterious
  - 2. laborious
  - 3. courtious
  - 4. religious

Question ID : 98958010483  
Status : Answered  
Chosen Option : 3

Q.1 52 Select the wrongly spelt word.

- Ans
- 1. groovey
  - 2. groom

3. groggy

4. gritty

Question ID : 98958010481  
Status : Answered  
Chosen Option : 1

Q.1  
53 Select the antonym of the given word.

EXTRAVAGANT

Ans  1. thrifty

2. resentful

3. deficient

4. wasteful

Question ID : 98958010468  
Status : Answered  
Chosen Option : 4

Q.1  
54 Select the wrongly spelt word.

Ans  1. blizzard

2. bitter

3. bewitched

4. bizzare

Question ID : 98958010479  
Status : Not Answered  
Chosen Option : --

Q.1  
55 Select the wrongly spelt word.

Ans  1. benefitial

2. beneath

3. benevolent

4. benign

Question ID : 98958010482  
Status : Answered  
Chosen Option : 1

Q.1  
56 Select the word, which means the same as the group of words given.

to shorten a piece of writing without losing the sense

Ans  1. abridge

2. allege

3. crop

4. edit

Question ID : 98958010477  
Status : Not Answered  
Chosen Option : --

Q.1 57 Select the most appropriate option to substitute the underlined segment in the given sentence. If there is no need to substitute it, select No improvement.

He will pass the driving test if he tries hard enough.

- Ans
- 1. if he had tried hard
  - 2. if he is trying hard
  - 3. No improvement.
  - 4. if he tried hard

Question ID : 98958010446  
Status : Answered  
Chosen Option : 3

Q.1 58 Select the synonym of the given word.

COMMENDABLE

- Ans
- 1. courteous
  - 2. praiseworthy
  - 3. satisfying
  - 4. grateful

Question ID : 98958010462  
Status : Not Answered  
Chosen Option : --

Q.1 59 Identify the segment in the sentence, which contains the grammatical error.

He was surprised at me refusing his offer.

- Ans
- 1. his offer.
  - 2. surprised
  - 3. He was
  - 4. at me refusing

Question ID : 98958010441  
Status : Not Answered  
Chosen Option : --

Q.1 60 Select the antonym of the given word.

MOROSE

- Ans
- 1. gloomy



- 2. cheerful
- 3. sick
- 4. tasteless

Question ID : 98958010467  
Status : Answered  
Chosen Option : 3

Q.1  
61 Select the antonym of the given word.

HOSTILE

- Ans
- 1. friendly
  - 2. rebel
  - 3. aggressive
  - 4. forceful

Question ID : 98958010464  
Status : Answered  
Chosen Option : 1

Q.1  
62 Select the word, which means the same as the group of words given.

A place where coins are made

- Ans
- 1. bank
  - 2. mint
  - 3. exchange
  - 4. reserve

Question ID : 98958010476  
Status : Answered  
Chosen Option : 2

Q.1  
63 Select the word, which means the same as the group of words given.

a place where bees are kept

- Ans
- 1. aviary
  - 2. apiary
  - 3. aquarium
  - 4. orchard

Question ID : 98958010475  
Status : Answered  
Chosen Option : 2

Q.1  
64

Identify the segment in the sentence, which contains the grammatical error.

He spends good deal of money on eating out.

- Ans
- 1. on eating out.
  - 2. of money
  - 3. He spends
  - 4. good deal

Question ID : 98958010438  
Status : Answered  
Chosen Option : 1

Q.1  
65 Select the synonym of the given word.

AFFLUENT

- Ans
- 1. strong
  - 2. joyous
  - 3. clever
  - 4. wealthy

Question ID : 98958010460  
Status : Answered  
Chosen Option : 4

Q.1  
66 Select the most appropriate option to substitute the underlined segment in the given sentence. If there is no need to substitute it, select No improvement.

The man who seen the accident to occur telephoned the police.

- Ans
- 1. saw the accident occurred
  - 2. had seen the accident occur
  - 3. No improvement.
  - 4. saw the accident was occurring

Question ID : 98958010447  
Status : Answered  
Chosen Option : 3

Q.1  
67 Select the most appropriate word to fill in the blank.

His new job is connected \_\_\_\_\_ developing software for teaching.

- Ans
- 1. from
  - 2. by
  - 3. about
  - 4. with

Question ID : 98958010449

Status : Answered  
Chosen Option : 4

Q.1  
68 Select the most appropriate word to fill in the blank.

Mr. Sharma may be late but I am sure Mr. Kapoor \_\_\_\_\_ be.

- Ans
- 1. should
  - 2. can't
  - 3. would
  - 4. won't

Question ID : 98958010448  
Status : Answered  
Chosen Option : 4

Q.1  
69 Select the antonym of the given word.

BONDAGE

- Ans
- 1. wealth
  - 2. affection
  - 3. liberty
  - 4. slavery

Question ID : 98958010466  
Status : Answered  
Chosen Option : 3

Q.1  
70 Select the word, which means the same as the group of words given.

a person who compiles dictionaries

- Ans
- 1. lexicographer
  - 2. cartographer
  - 3. calligrapher
  - 4. choreographer

Question ID : 98958010474  
Status : Answered  
Chosen Option : 1

Q.1  
71 Select the most appropriate word to fill in the blank.

Next week I \_\_\_\_\_ visiting my friend and staying with him for a day.

- Ans
- 1. intended
  - 2. intending
  - 3. intends

✓ 4. intend

Question ID : 98958010452  
Status : Answered  
Chosen Option : 4

Q.1  
72 Identify the segment in the sentence, which contains the grammatical error.

If the car hadn't broken down we will be at the office now.

- Ans
- 1. at the office
  - 2. hadn't broken down
  - 3. If the car
  - 4. we will be

Question ID : 98958010442  
Status : Answered  
Chosen Option : 2

Q.1  
73 Select the antonym of the given word.

ASSEMBLE

- Ans
- 1. gather
  - 2. resemble
  - 3. create
  - 4. disperse

Question ID : 98958010465  
Status : Answered  
Chosen Option : 4

Q.1  
74 Select the most appropriate word to fill in the blank.

The children had made a mess on the floor, so I asked Sana to clean \_\_\_\_\_ up.

- Ans
- 1. they
  - 2. its
  - 3. them
  - 4. it

Question ID : 98958010451  
Status : Answered  
Chosen Option : 4

Q.1  
75 Identify the segment in the sentence, which contains the grammatical error.

Neither Mohit nor Rohit were there at the shop when I went there.

- Ans
- 1. Neither Mohit nor Rohit
  - 2. when

3. were there

4. at the shop

Question ID : 98958010440

Status : Answered

Chosen Option : 3

Q.1 76 Select the most appropriate option to substitute the underlined segment in the given sentence. If there is no need to substitute it, select No improvement.

It is not wise relying to anybody too much.

Ans  1. relying at anybody

2. to rely in anybody

3. to rely on anybody

4. No improvement.

Question ID : 98958010444

Status : Answered

Chosen Option : 3

Q.1 77 Select the most appropriate meaning of the underlined idiom in the given sentence.

I am fed up with his false promises.

Ans  1. furious

2. disgusted

3. pleased

4. hopeful

Question ID : 98958010470

Status : Answered

Chosen Option : 2

Q.1 78 Select the word, which means the same as the group of words given.

a gigantic statue

Ans  1. colossus

2. citadel

3. castle

4. column

Question ID : 98958010478

Status : Answered

Chosen Option : 1

Q.1 79 Select the wrongly spelt word.

Ans  1. dribble

2. dreadful

3. drought

4. dreamy

Question ID : 98958010480  
Status : Not Answered  
Chosen Option : --

Q.1  
80 Select the most appropriate meaning of the underlined idiom in the given sentence.

Let's hope they will bury the hatchet and be friends again.

Ans  1. forget past quarrels

2. make plans cleverly

3. take courage

4. keep quiet

Question ID : 98958010472  
Status : Answered  
Chosen Option : 4

Q.1  
81 Select the synonym of the given word.

FEIGN

Ans  1. prefer

2. pester

3. pretend

4. prepare

Question ID : 98958010463  
Status : Answered  
Chosen Option : 3

Q.1  
82 Select the most appropriate option to substitute the underlined segment in the given sentence. If there is no need to substitute it, select No improvement.

Did you do what I telling you to do yesterday.

Ans  1. that I am telling you

2. what I have told you

3. No improvement.

4. what I told you

Question ID : 98958010443  
Status : Not Answered  
Chosen Option : --

Q.1  
83 Select the synonym of the given word.

ECSTASY



- Ans
- 1. grief
  - 2. happiness
  - 3. danger
  - 4. fear

Question ID : 98958010461  
Status : Answered  
Chosen Option : 2

Q.1 Identify the segment in the sentence, which contains the grammatical error.

84

The landlady made me changing the design of the kitchen three times.

- Ans
- 1. made me
  - 2. changing
  - 3. of the kitchen
  - 4. the design

Question ID : 98958010439  
Status : Not Answered  
Chosen Option : --

Q.1 Select the most appropriate option to substitute the underlined segment in the given sentence. If there is no need to substitute it, select No improvement.

85

You must go to Bhopal if you are liking it or not.

- Ans
- 1. No improvement.
  - 2. if you like it
  - 3. whether you have liked it
  - 4. whether you like it

Question ID : 98958010445  
Status : Answered  
Chosen Option : 4

Q.1 Select the synonym of the given word.

86

DAME

- Ans
- 1. girl
  - 2. female
  - 3. lady
  - 4. man

Question ID : 98958010459  
Status : Not Answered  
Chosen Option : --

Q.1  
87 Select the most appropriate word to fill in the blank.

The plant will die \_\_\_\_\_ you look after it.

- Ans
- 1. until
  - 2. unless
  - 3. otherwise
  - 4. if

Question ID : 98958010450  
Status : Answered  
Chosen Option : 1

Q.1  
88 Select the most appropriate meaning of the underlined idiom in the given sentence.

Getting the Fulbright Scholarship at this young age is a feather in his cap.

- Ans
- 1. an award not to be given up
  - 2. a sign of his intelligence
  - 3. Something he can show off about
  - 4. an accomplishment to be proud of

Question ID : 98958010471  
Status : Answered  
Chosen Option : 3

Q.1  
89 Select the most appropriate meaning of the underlined idiom in the given sentence.

If you go for this training, it will be beneficial to you in the long run.

- Ans
- 1. regularly
  - 2. immediately
  - 3. eventually
  - 4. intermittently

Question ID : 98958010469  
Status : Answered  
Chosen Option : 3

Q.1  
90 Select the most appropriate meaning of the underlined idiom in the given sentence.

The cost of living has increased so much that many people find it difficult to make both ends meet.

- Ans
- 1. buy something new
  - 2. earn enough to survive
  - 3. buy expensive gadgets
  - 4. help other people

Question ID : 98958010473  
Status : Answered

**Comprehension:**

In the following passage some words have been deleted. Fill in the blanks with the help of the alternatives given. Select the most appropriate option for each number.

Lord Baden Powell, the founder of Scouting was himself an army scout. During \_\_\_\_\_ (1) war in South Africa, when soldiers \_\_\_\_\_ (2) not easily available, he selected a few boys \_\_\_\_\_ (3) worked as messengers and did a wonderful \_\_\_\_\_ (4) as little scouts. Since then, the Scout Movement has \_\_\_\_\_ (5) throughout the world.

SubQuestion No : 191

Q.1 91 Select the most appropriate option to fill in blank

No.1.

- Ans
- 1. an
  - 2. a
  - 3. one
  - 4. any

Question ID : 98958010454

Status : Answered

Chosen Option : 2

**Comprehension:**

In the following passage some words have been deleted. Fill in the blanks with the help of the alternatives given. Select the most appropriate option for each number.

Lord Baden Powell, the founder of Scouting was himself an army scout. During \_\_\_\_\_ (1) war in South Africa, when soldiers \_\_\_\_\_ (2) not easily available, he selected a few boys \_\_\_\_\_ (3) worked as messengers and did a wonderful \_\_\_\_\_ (4) as little scouts. Since then, the Scout Movement has \_\_\_\_\_ (5) throughout the world.

SubQuestion No : 192

Q.1 92 Select the most appropriate option to fill in blank

No.2.

- Ans
- 1. are
  - 2. have
  - 3. had
  - 4. were

Question ID : 98958010455

Status : Answered

Chosen Option : 4

**Comprehension:**

In the following passage some words have been deleted. Fill in the blanks with the help of the alternatives given. Select the most appropriate option for each number.

Lord Baden Powell, the founder of Scouting was himself an army scout. During \_\_\_\_\_ (1) war in South Africa, when soldiers \_\_\_\_\_ (2) not easily available, he selected a few boys \_\_\_\_\_ (3) worked as messengers and did a wonderful \_\_\_\_\_ (4) as little scouts. Since then, the Scout Movement has \_\_\_\_\_ (5) throughout the world.

SubQuestion No : 193

Q.1  
93 Select the most appropriate option to fill in blank  
No.3.

- Ans
- 1. which
  - 2. whose
  - 3. who
  - 4. whom

Question ID : 98958010456  
Status : Answered  
Chosen Option : 3

Comprehension:

In the following passage some words have been deleted. Fill in the blanks with the help of the alternatives given. Select the most appropriate option for each number.

Lord Baden Powell, the founder of Scouting was himself an army scout. During \_\_\_\_\_ (1) war in South Africa, when soldiers \_\_\_\_\_ (2) not easily available, he selected a few boys \_\_\_\_\_ (3) worked as messengers and did a wonderful \_\_\_\_\_ (4) as little scouts. Since then, the Scout Movement has \_\_\_\_\_ (5) throughout the world.

SubQuestion No : 194

Q.1  
94 Select the most appropriate option to fill in blank  
No.4.

- Ans
- 1. job
  - 2. post
  - 3. thing
  - 4. work

Question ID : 98958010457  
Status : Answered  
Chosen Option : 1

Comprehension:

In the following passage some words have been deleted. Fill in the blanks with the help of the alternatives given. Select the most appropriate option for each number.

Lord Baden Powell, the founder of Scouting was himself an army scout. During \_\_\_\_\_ (1) war in South Africa, when soldiers \_\_\_\_\_ (2) not easily available, he selected a few boys \_\_\_\_\_ (3) worked as messengers and did a wonderful \_\_\_\_\_ (4) as little scouts. Since then, the Scout Movement has \_\_\_\_\_ (5) throughout the world.

SubQuestion No : 195

Q.1  
95 Select the most appropriate option to fill in blank  
No. 5.

- Ans
- 1. scattered
  - 2. extended
  - 3. spread
  - 4. stretched

Question ID : 98958010458  
Status : Answered  
Chosen Option : 3

Comprehension:

KD JOB UPDATES



Read the following passage and answer the questions given after it.

The ocean will not look the same color in the future.

Essentially, climate change will make the blues of the ocean bluer and the greens greener. Scientists from MIT, Boston, figured this out by creating a global model that simulates the growth of a tiny creature that lives in the oceans and affects the color we see. Their research was published in the journal Nature Communications.

The ocean looks blue or green to us because of a combination of how sunlight interacts with water molecules and with whatever else lives in that water.

The molecules in water absorb all but the blue part of the spectrum of sunlight, and the water reflects that blue color back. That's the color we see.

The water looks greener when it has more phytoplankton, tiny, microscopic organisms that, like plants, can use chlorophyll to capture mostly the blue portions of the spectrum of sunlight. They then use photosynthesis to create the chemical energy they need to live. When there are more of these creatures in the water absorbing sunlight, they make the water look greener. Conversely, if there are fewer phytoplankton, the water looks bluer.

The creatures' growth is dependent on how much sunlight, carbon dioxide and nutrients are around. Climate change is altering the ocean currents, meaning there will be fewer nutrients for phytoplankton to feed on in some areas, so there will be a decline in their number in those regions.

Since the 1990s, satellites have taken regular measurements of how much chlorophyll is in the ocean. Those levels can change because of weather events or because of climate change.

The study predicts that the blues will intensify, most likely in subtropical regions where phytoplankton will decrease. These are areas near the equator like Bermuda and the Bahamas that are already quite low in phytoplankton.

Regions where there are a lot of nutrients, like in the Southern Ocean or parts of the North Atlantic, will see even faster-growing phytoplankton because those waters are warming with climate change. Those waters will look greener.

Climate change will bring a color change to half of the world's oceans by the end of the 21st century, the study says. That's bad on several levels: For one, phytoplankton remove about as much carbon dioxide from the air as plants and help regulate our climate, research shows. They are also key to other animals' survival." Phytoplankton are at the base, and if the base changes, it endangers everything else along the food web, going far enough to the polar bears or tuna or just about anything that you want to eat or love to see in pictures, "said Stephanie Dutkiewicz, a principal research scientist in MIT.

SubQuestion No : 196

Q.1  
96 The passage is mainly about:

Ans  
✓ 1. The change of the ocean color due to climate change.



- 2. The growth of phytoplankton in the ocean.
- 3. Why ocean water looks blue.
- 4. How the growth of phytoplankton will impact the food web

Question ID : **98958010485**

Status : **Not Answered**

Chosen Option : --

**Comprehension:**

KD JOB UPDATES

Read the following passage and answer the questions given after it.

The ocean will not look the same color in the future.

Essentially, climate change will make the blues of the ocean bluer and the greens greener. Scientists from MIT, Boston, figured this out by creating a global model that simulates the growth of a tiny creature that lives in the oceans and affects the color we see. Their research was published in the journal Nature Communications.

The ocean looks blue or green to us because of a combination of how sunlight interacts with water molecules and with whatever else lives in that water.

The molecules in water absorb all but the blue part of the spectrum of sunlight, and the water reflects that blue color back. That's the color we see.

The water looks greener when it has more phytoplankton, tiny, microscopic organisms that, like plants, can use chlorophyll to capture mostly the blue portions of the spectrum of sunlight. They then use photosynthesis to create the chemical energy they need to live. When there are more of these creatures in the water absorbing sunlight, they make the water look greener. Conversely, if there are fewer phytoplankton, the water looks bluer.

The creatures' growth is dependent on how much sunlight, carbon dioxide and nutrients are around. Climate change is altering the ocean currents, meaning there will be fewer nutrients for phytoplankton to feed on in some areas, so there will be a decline in their number in those regions.

Since the 1990s, satellites have taken regular measurements of how much chlorophyll is in the ocean. Those levels can change because of weather events or because of climate change.

The study predicts that the blues will intensify, most likely in subtropical regions where phytoplankton will decrease. These are areas near the equator like Bermuda and the Bahamas that are already quite low in phytoplankton.


Regions where there are a lot of nutrients, like in the Southern Ocean or parts of the North Atlantic, will see even faster-growing phytoplankton because those waters are warming with climate change. Those waters will look greener.


Climate change will bring a color change to half of the world's oceans by the end of the 21st century, the study says. That's bad on several levels: For one, phytoplankton remove about as much carbon dioxide from the air as plants and help regulate our climate, research shows. They are also key to other animals' survival." Phytoplankton are at the base, and if the base changes, it endangers everything else along the food web, going far enough to the polar bears or tuna or just about anything that you want to eat or love to see in pictures, "said Stephanie Dutkiewicz, a principal research scientist in MIT.

SubQuestion No : 197

Q.1  
97 The colour of the ocean depends on:

- Ans
- 1. the growth of phytoplankton in the ocean.
  - 2. water molecules absorbing the blue of the sunlight

 3. the sunlight's absorption by the sea organisms.

 4. the sunlight's interaction with the water molecules and sea organisms.

Question ID : 98958010486

Status : **Not Answered**

Chosen Option : --

Comprehension:

KD JOB UPDATES

Read the following passage and answer the questions given after it.

The ocean will not look the same color in the future.

Essentially, climate change will make the blues of the ocean bluer and the greens greener. Scientists from MIT, Boston, figured this out by creating a global model that simulates the growth of a tiny creature that lives in the oceans and affects the color we see. Their research was published in the journal Nature Communications.

The ocean looks blue or green to us because of a combination of how sunlight interacts with water molecules and with whatever else lives in that water.

The molecules in water absorb all but the blue part of the spectrum of sunlight, and the water reflects that blue color back. That's the color we see.

The water looks greener when it has more phytoplankton, tiny, microscopic organisms that, like plants, can use chlorophyll to capture mostly the blue portions of the spectrum of sunlight. They then use photosynthesis to create the chemical energy they need to live. When there are more of these creatures in the water absorbing sunlight, they make the water look greener. Conversely, if there are fewer phytoplankton, the water looks bluer.

The creatures' growth is dependent on how much sunlight, carbon dioxide and nutrients are around. Climate change is altering the ocean currents, meaning there will be fewer nutrients for phytoplankton to feed on in some areas, so there will be a decline in their number in those regions.

Since the 1990s, satellites have taken regular measurements of how much chlorophyll is in the ocean. Those levels can change because of weather events or because of climate change.

The study predicts that the blues will intensify, most likely in subtropical regions where phytoplankton will decrease. These are areas near the equator like Bermuda and the Bahamas that are already quite low in phytoplankton.

Regions where there are a lot of nutrients, like in the Southern Ocean or parts of the North Atlantic, will see even faster-growing phytoplankton because those waters are warming with climate change. Those waters will look greener.

Climate change will bring a color change to half of the world's oceans by the end of the 21st century, the study says. That's bad on several levels: For one, phytoplankton remove about as much carbon dioxide from the air as plants and help regulate our climate, research shows. They are also key to other animals' survival." Phytoplankton are at the base, and if the base changes, it endangers everything else along the food web, going far enough to the polar bears or tuna or just about anything that you want to eat or love to see in pictures, "said Stephanie Dutkiewicz, a principal research scientist in MIT.

SubQuestion No : 198

Q.1  
98 In which areas will the ocean look bluer?

- Ans
- 1. Areas near poles
  - 2. Southern ocean



✓ 3. Areas near equator

✗ 4. North Atlantic ocean

Question ID : 98958010487

Status : Not Answered

Chosen Option : --

Comprehension:

KD JOB UPDATES

Read the following passage and answer the questions given after it.

The ocean will not look the same color in the future.

Essentially, climate change will make the blues of the ocean bluer and the greens greener. Scientists from MIT, Boston, figured this out by creating a global model that simulates the growth of a tiny creature that lives in the oceans and affects the color we see. Their research was published in the journal Nature Communications.

The ocean looks blue or green to us because of a combination of how sunlight interacts with water molecules and with whatever else lives in that water.

The molecules in water absorb all but the blue part of the spectrum of sunlight, and the water reflects that blue color back. That's the color we see.

The water looks greener when it has more phytoplankton, tiny, microscopic organisms that, like plants, can use chlorophyll to capture mostly the blue portions of the spectrum of sunlight. They then use photosynthesis to create the chemical energy they need to live. When there are more of these creatures in the water absorbing sunlight, they make the water look greener. Conversely, if there are fewer phytoplankton, the water looks bluer.

The creatures' growth is dependent on how much sunlight, carbon dioxide and nutrients are around. Climate change is altering the ocean currents, meaning there will be fewer nutrients for phytoplankton to feed on in some areas, so there will be a decline in their number in those regions.

Since the 1990s, satellites have taken regular measurements of how much chlorophyll is in the ocean. Those levels can change because of weather events or because of climate change.

The study predicts that the blues will intensify, most likely in subtropical regions where phytoplankton will decrease. These are areas near the equator like Bermuda and the Bahamas that are already quite low in phytoplankton.

Regions where there are a lot of nutrients, like in the Southern Ocean or parts of the North Atlantic, will see even faster-growing phytoplankton because those waters are warming with climate change. Those waters will look greener.


Climate change will bring a color change to half of the world's oceans by the end of the 21st century, the study says. That's bad on several levels: For one, phytoplankton remove about as much carbon dioxide from the air as plants and help regulate our climate, research shows. They are also key to other animals' survival." Phytoplankton are at the base, and if the base changes, it endangers everything else along the food web, going far enough to the polar bears or tuna or just about anything that you want to eat or love to see in pictures, "said Stephanie Dutkiewicz, a principal research scientist in MIT.


SubQuestion No : 199

Q.1 99 Where do phytoplankton grow profusely?

- Ans
1. Where the ocean currents are cold
  2. Where the sun rays are absorbed by ocean water



 3. Where the ocean waters are hot as at equator

 4. Where there are a lot of nutrients in the ocean water

Question ID : **98958010488**

Status : **Not Answered**

Chosen Option : --

Comprehension:

KD JOB UPDATES

Read the following passage and answer the questions given after it.

The ocean will not look the same color in the future.

Essentially, climate change will make the blues of the ocean bluer and the greens greener. Scientists from MIT, Boston, figured this out by creating a global model that simulates the growth of a tiny creature that lives in the oceans and affects the color we see. Their research was published in the journal Nature Communications.

The ocean looks blue or green to us because of a combination of how sunlight interacts with water molecules and with whatever else lives in that water.

The molecules in water absorb all but the blue part of the spectrum of sunlight, and the water reflects that blue color back. That's the color we see.

The water looks greener when it has more phytoplankton, tiny, microscopic organisms that, like plants, can use chlorophyll to capture mostly the blue portions of the spectrum of sunlight. They then use photosynthesis to create the chemical energy they need to live. When there are more of these creatures in the water absorbing sunlight, they make the water look greener. Conversely, if there are fewer phytoplankton, the water looks bluer.

The creatures' growth is dependent on how much sunlight, carbon dioxide and nutrients are around. Climate change is altering the ocean currents, meaning there will be fewer nutrients for phytoplankton to feed on in some areas, so there will be a decline in their number in those regions.

Since the 1990s, satellites have taken regular measurements of how much chlorophyll is in the ocean. Those levels can change because of weather events or because of climate change.

The study predicts that the blues will intensify, most likely in subtropical regions where phytoplankton will decrease. These are areas near the equator like Bermuda and the Bahamas that are already quite low in phytoplankton.

Regions where there are a lot of nutrients, like in the Southern Ocean or parts of the North Atlantic, will see even faster-growing phytoplankton because those waters are warming with climate change. Those waters will look greener.

Climate change will bring a color change to half of the world's oceans by the end of the 21st century, the study says. That's bad on several levels: For one, phytoplankton remove about as much carbon dioxide from the air as plants and help regulate our climate, research shows. They are also key to other animals' survival." Phytoplankton are at the base, and if the base changes, it endangers everything else along the food web, going far enough to the polar bears or tuna or just about anything that you want to eat or love to see in pictures, "said Stephanie Dutkiewicz, a principal research scientist in MIT.

SubQuestion No : 200

Q.2  
00 Which statement is not true according to the passage?

Ans

- 1. In subtropical regions phytoplankton will decrease.
- 2. Phytoplankton has a key role in the survival of other animals.
- 3. More blue colour in the ocean will affect the climate change.
- 4. By the end of 21<sup>st</sup> century the colour of ocean waters will change.

Question ID : 98958010489

Status : **Not Answered**

Chosen Option : --

KD JOB UPDATES

## Recruitment of Sub-Inspector in Delhi Police, CAPFs and Assistant Sub-Inspector in CISF Examination, 2018

Roll No. :	
Registration No.	
Name :	
Exam Venue :	
Exam Time :	10:00 AM - 12:00 PM
Exam Date :	13/03/2019

Section : SI CPO

**Q.1** Select the option that is related to the third term in the same way as the first term is related to the second term.

DFIM : WURN :: CMHV : \_\_\_\_\_

- Ans  1. XNSE  
 2. XNTE  
 3. YNSE  
 4. XVTR

Question ID : 98958010607  
Status : Not Answered  
Chosen Option : --

**Q.2** Two statements are given, followed by three conclusions numbered I, II and III. Assuming the statements to be true, even if they seem to be at variance with commonly known facts, decide which of the conclusions logically follow(s) from the statements.

**Statements:**

All teachers are researchers.  
No researcher is unemployed.

**Conclusions:**

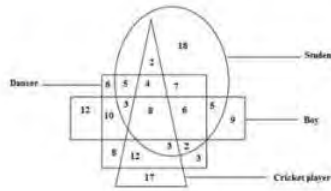
- I. Some unemployed are teachers.  
II. No teacher is unemployed.  
III. Some teachers are unemployed.

- Ans  1. Only conclusions I and III follow.  
 2. Only conclusion I follows.  
 3. Only conclusion II follows.  
 4. Only conclusions II and III follow.

Question ID : 98958010613  
Status : Answered  
Chosen Option : 3

**Q.3**

In the following diagram, the triangle represents 'cricket players', the circle represents 'students', the rectangle represents 'boys' and the square represents 'dancers'. The numbers in different segments show the number of persons.



How many students are dancers and cricket players but not boys?

- Ans
- 1. 12
  - 2. 16
  - 3. 4
  - 4. 7

Question ID : 98958010643

Status : Answered

Chosen Option : 3

Q.4 Three of the following four words are alike in a certain way and one is different. Find the odd one out.

- Ans
- 1. Cabbage
  - 2. Potato
  - 3. Turnip
  - 4. Carrot

Question ID : 98958010601

Status : Answered

Chosen Option : 3

Q.5 Which letter-cluster will replace the question mark (?) in the following series?

CGE, HJI, LPN, SUT, ?

- Ans
- 1. YCA
  - 2. YAZ
  - 3. XZY
  - 4. XBZ

Question ID : 98958010595

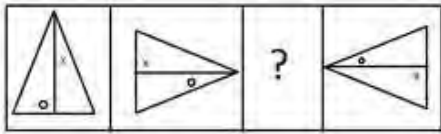
Status : Answered

Chosen Option : 1

Q.6 Riya walked 90 m towards the north from her house, and then took a right turn and walked 60 m to reach the market. Then, she took a left turn and walked a few meters from the market to reach the post office, from where she took a left turn again and walked 160 m to reach the school. If the air distance between Riya's house and the school is 260 m, what is the air distance between the market and the post office?

- Ans
- 1. 150 m
  - 2. 120 m
  - 3. 180 m
  - 4. 100 m

Q.7 Identify the missing figure in the following series.



Ans

1.



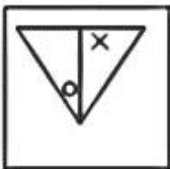
2.



3.



4.



Q.8 Which number will replace the question mark (?) in the following series?

1, 2, 6, 12, ?, 72, 216

1. 32

2. 24

3. 36

4. 48

Q.9 Three of the following four letter-clusters are alike in a certain way and one is different. Find the odd one out.

1. FHKM



2. QSVZ

3. MORV

4. DFIM

Question ID : 98958010598

Status : Answered

Chosen Option : 1

Q.1 Select the correct alternative to indicate the arrangement of the following words in a logical and meaningful order.

0

1. Treatment
2. Diagnosis
3. Doctor
4. Discharge
5. Bill

Ans  1. 3, 2, 5, 1, 4

2. 2, 3, 1, 4, 5

3. 3, 2, 1, 5, 4

4. 4, 5, 3, 2, 1

Question ID : 98958010596

Status : Answered

Chosen Option : 3

Q.1 Which two numbers should be interchanged to make the given equation correct?

1

$$4 \times 2 - 8 + 9 \div 3 = 9 \div 3 + 4 \times 2 - 8$$

Ans  1. 8 and 3

2. 3 and 4

3. 3 and 2

4. 8 and 4

Question ID : 98958010627

Status : Not Attempted and Marked For Review

Chosen Option : --

Q.1 Three of the following four number-pairs are alike in a certain way and one is different. Find the odd one out.

2

Ans  1. 967 : 844

2. 865 : 722

3. 756 : 633

4. 378 : 255

Question ID : 98958010623

Status : Not Answered

Chosen Option : --

Q.1 Select the word-pair in which the two words are related in the same way as are the two words in the given word-pair.

3

Wish : Desire

Ans

1. Morning : Evening

2. Run : Ride

3. Cool : Cold

4. Drive : Speed

Question ID : 98958010605

Status : Answered

Chosen Option : 3

Q.1 Select the option that is related to the third term in the same way as the second term is related to the first term.  
4

HKNQ : LJPO :: DFHJ : \_\_\_\_\_

Ans  1. EEII

2. EGJH

3. CGLJ

4. EEJH

Question ID : 98958010606

Status : Answered

Chosen Option : 4

Q.1 'Star' is related to 'Galaxy' in the same way as 'Flower' is related to '\_\_\_\_\_'.  
5

Ans  1. Petal

2. Blossom

3. Jasmine

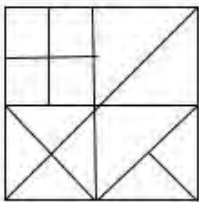
4. Bouquet

Question ID : 98958010602

Status : Answered

Chosen Option : 4

Q.1 How many triangles are there in the following figure?  
6



Ans  1. 16

2. 20

3. 14

4. 17

Question ID : 98958010632

Status : Answered

Chosen Option : 3

Q.1  
7 Select the option in which the given figure is embedded. (Rotation is not allowed)



Ans

- 1.
- 2.
- 3.
- 4.

Question ID : 98958010635  
Status : Answered  
Chosen Option : 4

Q.1  
8 Select the correct mirror image of the given figure when the mirror is placed on the right of the figure.



Ans

- 1.
- 2.
- 3.
- 4.

Question ID : 98958010637  
Status : Answered  
Chosen Option : 4

Q.1  
9 Which two signs should be interchanged to make the following equation correct?

$$10 - 15 \times 9 + 6 \div 3 = 9$$

- Ans
- 1.  $\times$  and  $-$
  - 2.  $-$  and  $\div$

- 3. + and -
- 4. ÷ and +

Question ID : **98958010626**  
 Status : **Answered**  
 Chosen Option : **2**

**Q.2** Starting from Anand's house, the school bus takes a right turn and covers 3 km. Then, it takes a left turn and covers 2 km. Finally, it takes a right turn again and covers 4 km to reach the school. On reaching the school, the bus faces south-east. In which direction was the bus facing when it left Anand's house?

- Ans**
- 1. North-east
  - 2. South-east
  - 3. South-west
  - 4. North

Question ID : **98958010639**  
 Status : **Answered**  
 Chosen Option : **4**

**Q.2** If MADE is coded as 12236 and BAD is coded as 123, then how will DECK be coded as?

- Ans**
- 1. 36201
  - 2. 34312
  - 3. 44412
  - 4. 36212

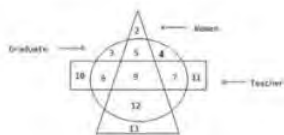
Question ID : **98958010611**  
 Status : **Answered**  
 Chosen Option : **4**

**Q.2** 'Picture' is related to 'Coloured' in the same way as 'Letter' is related to '\_\_\_\_\_'.  
 2

- Ans**
- 1. Alphabet
  - 2. Bold
  - 3. Language
  - 4. Word

Question ID : **98958010603**  
 Status : **Answered**  
 Chosen Option : **2**

**Q.2** In the following diagram, the triangle represents 'women', the circle represents 'graduates' and the rectangle represents 'teachers'. The numbers in different segments show the number of persons.



How many women graduates are not teachers?

- Ans**
- 1. 9

- 2. 5
- 3. 12
- 4. 17

Question ID : 98958010642  
Status : Answered  
Chosen Option : 4

Q.2  
4 If DIG = 41 and GOAD = 55, then FACT = \_\_\_\_\_.

- Ans
- 1. 45
  - 2. 53
  - 3. 63
  - 4. 61

Question ID : 98958010610  
Status : Not Answered  
Chosen Option : --

Q.2  
5 Select the correct alternative to indicate the arrangement of the following words in a logical and meaningful order.

1. Cloud
2. Shelter
3. Monsoon
4. Rain
5. Flood
6. Relief

- Ans
- 1. 4, 1, 2, 5, 2, 6
  - 2. 1, 3, 4, 5, 6, 2
  - 3. 3, 1, 4, 2, 5, 6
  - 4. 3, 1, 4, 5, 2, 6

Question ID : 98958010597  
Status : Answered  
Chosen Option : 4

Q.2  
6 Which number will replace the question mark (?) in the following series?

1, 3, 4, 7, ?, 18, 29

- Ans
- 1. 10
  - 2. 15
  - 3. 11
  - 4. 13

Question ID : 98958010615  
Status : Not Answered  
Chosen Option : --

Q.2  
7 In a code language, MONKEY is written as LPMLDZ. How will STROKE be written as in that language?

- Ans
- 1. TSSNLD

2. RUQPJF

3. RUQNLD

4. RUQFJP

Question ID : 98958010608

Status : Answered

Chosen Option : 2

Q.2 Three of the following four number-pairs are alike in a certain way and one is different. Find the odd one out.

8

Ans  1. 49 : 94

2. 15 : 51

3. 38 : 83

4. 56 : 67

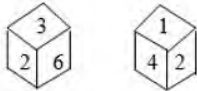
Question ID : 98958010620

Status : Answered

Chosen Option : 4

Q.2 Two positions of the same dice are given. Which number will be at the top if '3' is at the bottom?

9



Ans  1. 4

2. 5

3. 1

4. 6

Question ID : 98958010633

Status : Answered

Chosen Option : 1

Q.3 Three of the following four words are alike in a certain way and one is different. Find the odd one out.

0

Ans  1. Mug

2. Pan

3. Jug

4. Cup

Question ID : 98958010600

Status : Answered

Chosen Option : 2

Q.3 Three of the following four letter-clusters are alike in a certain way and one is different. Find the odd one out.

1

Ans  1. CHEL

2. VSUP



3. MROV

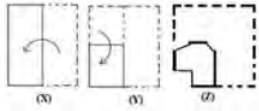
4. ZVXT

Question ID : 98958010599

Status : Not Answered


Chosen Option : --

Q.3 The sequence of folding a piece of square paper and the manner in which the folded paper has been cut is shown in figures X, Y and Z. How would this paper look when unfolded?

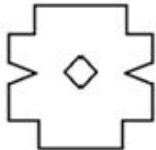


Ans

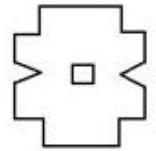
1.




2.



3.



4.

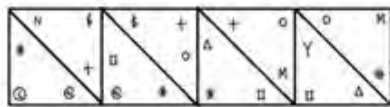


Question ID : 98958010638

Status : Answered

Chosen Option : 1

Q.3 Select the figure that will come next in the following series.



Ans

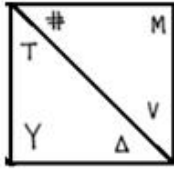
1.



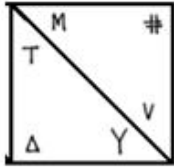
2.



3.



4.



Question ID : 98958010631  
Status : Answered  
Chosen Option : 3

Q.3 Select the option that is related to the third number in the same way as the second number is related to the first number.

4

4 : 8 :: 25 : \_\_\_\_\_

- Ans  1. 625  
 2. 125  
 3. 100  
 4. 75

Question ID : 98958010617  
Status : Answered  
Chosen Option : 3

Q.3 Select the number-pair in which the two numbers are related in the same way as are the two numbers of the given pair.

5

16 : 26

- Ans  1. 15 : 27  
 2. 25 : 37  
 3. 4 : 11  
 4. 36 : 56

Question ID : 98958010619  
Status : Answered  
Chosen Option : 4

Q.3  
6

Two statements are given, followed by three conclusions numbered I, II and III. Assuming the statements to be true, even if they seem to be at variance with commonly known facts, decide which of the conclusions logically follow(s) from the statements.

**Statements:**

Some men are players.  
All players are athletes.

**Conclusions:**

- I. No athlete is a man.
- II. All men are athletes.
- III. Some athletes are men.

- Ans  1. Only conclusion III follows.
2. Only conclusions II and III follow.
3. Only conclusion II follows.
4. Only conclusion I follows.

Question ID : 98958010612  
Status : Answered  
Chosen Option : 1

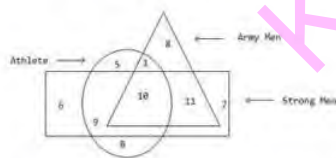
**Q.3** Select the option that is related to the third number in the same way as the second number is related to the first number.  
7

12 : 145 : 8 :: \_\_\_\_\_

- Ans  1. 73
2. 60
3. 85
4. 65

Question ID : 98958010618  
Status : Answered  
Chosen Option : 4

**Q.3** In the following diagram, the triangle represents 'army men', the circle represents 'athletes' and the rectangle represents 'strong men'. The numbers in different segments show the number of persons.

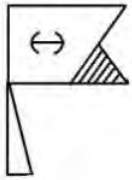


How many strong army men are not athletes?

- Ans  1. 10
2. 11
3. 19
4. 13

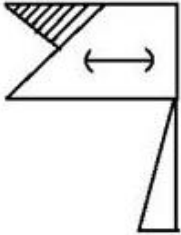
Question ID : 98958010641  
Status : Answered  
Chosen Option : 3

Select the correct mirror image of the given figure when the mirror is placed on the right of the figure.

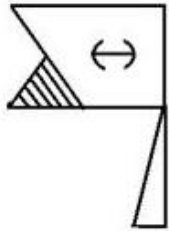


Ans

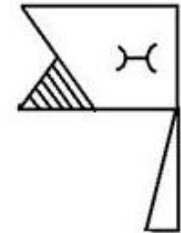
1.



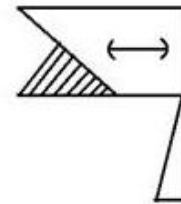
2.



3.



4.



KD JOB UPDATES

Question ID : 98958010636

Status : Answered

Chosen Option : 2

Q.4 Three of the following four number-pairs are alike in a certain way and one is different. Find the odd one out.

0

1. 34 : 7

2. 78 : 13

3. 12 : 3

4. 56 : 11

Question ID : 98958010621

Status : Answered

Chosen Option : 2

Q.4

1

Which of the following interchanges of signs and numbers would make the given equation correct?

$$12 \times 18 \div 3 - 6 + 4 = 5$$

- Ans
- 1.  $\div$  and  $\times$ , 6 and 3
  - 2.  $\div$  and  $\times$ , 4 and 3
  - 3.  $\div$  and  $+$ , 3 and 4
  - 4.  $\times$  and  $+$ , 3 and 6

Question ID : 98958010628

Status : Answered

Chosen Option : 1

Q.4  
2 Which number will replace the question mark (?) in the following series?

3, 7, 13, 27, ?, 107, 213

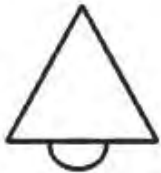
- Ans
- 1. 63
  - 2. 49
  - 3. 58
  - 4. 53

Question ID : 98958010616

Status : Answered

Chosen Option : 4

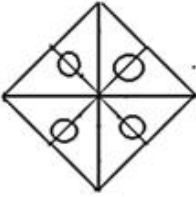
Q.4  
3 Select the option in which the given figure is embedded.



Ans

- 1.
- 2.
- 3.

4.



Question ID : 98958010634

Status : Answered

Chosen Option : 2

Q.4 In a code language, CONCERT is written as CNEROCT. How will SMARTER be written in that language?  
4

- Ans  1. RATMESR  
 2. RETRAMS  
 3. RATESMR  
 4. RATEMSR

Question ID : 98958010609

Status : Answered

Chosen Option : 4

Q.4 Select the word-pair in which the two words are related in the same way as are the two words in the given word-pair.  
5

Weigh : Balance

- Ans  1. Swim : River  
 2. Pour : Water  
 3. Detect : Radar  
 4. Volume : Liquid

Question ID : 98958010604

Status : Answered

Chosen Option : 3

Q.4 Three of the following four number-pairs are alike in a certain way and one is different. Find the odd one out.  
6

- Ans  1. 4 : 26  
 2. 6 : 48  
 3. 10 : 120  
 4. 8 : 80

Question ID : 98958010622

Status : Answered

Chosen Option : 4

Q.4 Which letter will replace the question mark (?) in the following series?  
7

Y, X, V, S, ?, J

- Ans  1. P  
 2. O



3. Q

4. N

Question ID : 98958010594  
Status : Answered  
Chosen Option : 3

Q.4  
8 Select the set of numbers that is similar to the following set.

{9, 15, 24}

Ans  1. {6, 10, 16}

2. {12, 20, 30}

3. {21, 33, 55}

4. {15, 25, 35}

Question ID : 98958010625  
Status : Answered  
Chosen Option : 4

Q.4  
9 Select the set of numbers that is similar to the following set.

{9, 54, 6}

Ans  1. {7, 74, 12}

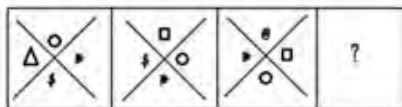
2. {5, 35, 7}

3. {3, 15, 6}

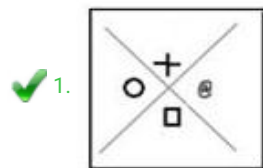
4. {8, 64, 9}

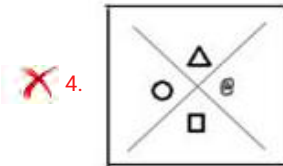
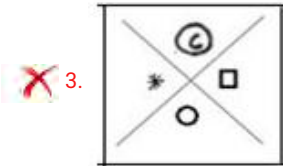
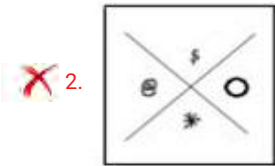
Question ID : 98958010624  
Status : Answered  
Chosen Option : 2

Q.5  
0 Identify the missing figure in the following series.



Ans





Question ID : 98958010630  
Status : Answered  
Chosen Option : 4

Q.5 \_\_\_\_\_ is the first institute in the country to launch a full-fledged bachelor's programme in Artificial Intelligence (AI) technology.

- Ans
- 1. IIT Bombay
  - 2. IIT Kanpur
  - 3. IIT Delhi
  - 4. IIT Hyderabad

Question ID : 98958010752  
Status : Answered  
Chosen Option : 1

Q.5 \_\_\_\_\_ is one of the most important technique for the separation of a mixture by passing it in solution or suspension through a medium in which the components move at different rates.

- Ans
- 1. Filtration
  - 2. Evaporation
  - 3. Chromatography
  - 4. Distillation

Question ID : 98958010746  
Status : Not Answered  
Chosen Option : --

Q.5 There are three types of heterotrophs. Which of the following is **NOT** one of them?

- Ans
- 1. Consumers
  - 2. Omnivores
  - 3. Herbivores
  - 4. Carnivores

Question ID : 98958010782

Status : Answered

Chosen Option : 3

Q.5 Tripura Chief Minister \_\_\_\_\_ launched the Sustainable Catchment Forest Management (SCATFORM) project.

4

- Ans
- 1. Pema Khandu
  - 2. Biplab Kumar Deb
  - 3. Nitish Kumar
  - 4. Bhupesh Baghel

Question ID : 98958010769

Status : Not Answered

Chosen Option : --

Q.5 The Supreme Court has issued a notice to the Central Government on \_\_\_\_\_ questioning the centre's notification

5

authorising 10 central agencies to intercept monitor and decrypt any computer system.

- Ans
- 1. PIL
  - 2. IPL
  - 3. LPI
  - 4. LIP

Question ID : 98958010778

Status : Not Answered

Chosen Option : --

Q.5 The Union Cabinet chaired by Prime Minister Narendra Modi has approved the Agriculture Export Policy, 2018, with

6

an aim to increase farmer's income by \_\_\_\_\_ % by 2022.

- Ans
- 1. 100%
  - 2. 25 %
  - 3. 50%
  - 4. 75 %

Question ID : 98958010793

Status : Answered

Chosen Option : 1

Q.5 Who is the Railway Minister of India as on January 2019?

7

- Ans
- 1. Piyush Goyal
  - 2. Arun Jaitley
  - 3. Nitin Gadkari
  - 4. Suresh Prabhu

Question ID : 98958010768

Status : Answered

Chosen Option : 3

Q.5

8 Andaman and Nicobar Islands is a group of \_\_\_\_\_ islands/islets.

- Ans
- 1. 780
  - 2. 450
  - 3. 572
  - 4. 275

Question ID : 98958010788  
Status : Answered  
Chosen Option : 2

Q.5  
9 Who was appointed as the first Chief Justice of independent India?

- Ans
- 1. A R Sarkar
  - 2. Bijan Mukherjee
  - 3. Y V Chandrachud
  - 4. Harilal Kania

Question ID : 98958010758  
Status : Answered  
Chosen Option : 1

Q.6  
0 The Hindu Literary Prize 2018 for non-fiction was awarded to Activist \_\_\_\_\_, author of 'Interrogating my Chandal Life: An Autobiography of a Dalit' during The Hindu Lit for Life 2019.

- Ans
- 1. Mamta Nainy
  - 2. Vinayak Varma
  - 3. Manoranjan Byapari
  - 4. Venita Coelho

Question ID : 98958010745  
Status : Not Answered  
Chosen Option : --

Q.6  
1 India celebrates Army Day on \_\_\_\_\_ to salute the valiant soldiers who sacrificed their lives to protect the country.

- Ans
- 1. January 15
  - 2. February 15
  - 3. August 17
  - 4. March 10

Question ID : 98958010750  
Status : Not Answered  
Chosen Option : --

Q.6  
2 In January 2019, the Finance Ministry asked the Public Sector banks to gradually reduce the Government's equity to \_\_\_\_\_ per cent.

- Ans
- 1. 52
  - 2. 63

3. 45

4. 37

Question ID : 98958010789

Status : Not Answered

Chosen Option : --

Q.6 India's ace sprinter and Asian Games gold-medalist, \_\_\_\_\_ was appointed as first ever youth ambassador of United Nations Children's Fund (UNICEF) India.

Ans  1. Manjeet Kaur

2. Mandeep Kaur

3. Jisna Mathew

4. Hima Das

Question ID : 98958010759

Status : Answered

Chosen Option : 4

Q.6 Persea Americana is commonly known as \_\_\_\_\_.

Ans  1. Orange

2. Grapes

3. Watermelon

4. Avocado

Question ID : 98958010770

Status : Not Answered

Chosen Option : --

Q.6 Vesak commemorates the birth of \_\_\_\_\_.

Ans  1. Buddha

2. Christ

3. Mahavir

4. Judas

Question ID : 98958010767

Status : Not Answered

Chosen Option : --

Q.6 By whom was the play 'Caesar and Cleopatra' written?

Ans  1. Joy Adamson

2. George Bernard Shaw

3. Thomas Powers

4. Ernest Hemingway

Question ID : 98958010786

Status : **Not Answered**  
Chosen Option : --

Q.6 India-Myanmar bilateral army exercise, IMBEX 2018-19, has begun at \_\_\_\_\_ Military Station which houses the  
7 headquarters of the Western Command.

- Ans
- 1. Tandur
  - 2. Chandi mandir
  - 3. Ramgarh
  - 4. Pasan

Question ID : **98958010772**  
Status : **Answered**  
Chosen Option : 2

Q.6 The Traffic Police Department of \_\_\_\_\_ is looking at a futuristic model to maintain traffic flow and spread awareness  
8 about the traffic rules by introducing a robot named 'Roadeo'.

- Ans
- 1. Delhi
  - 2. Ahmedabad
  - 3. Pune
  - 4. Mumbai

Question ID : **98958010747**  
Status : **Answered**  
Chosen Option : 1

Q.6 It is believed that Lord Shiva assumed the form of \_\_\_\_\_ and married Parvati at the site of the Meenakshi Temple in  
9 South India.

- Ans
- 1. Harihara
  - 2. Nataraja
  - 3. Sundareshwarar
  - 4. Pashupati

Question ID : **98958010755**  
Status : **Not Answered**  
Chosen Option : --

Q.7 Shaktikanta Das took over as the \_\_\_\_\_ Governor of Reserve Bank of India after the resignation of Urjit Patel.  
0

- Ans
- 1. 27th
  - 2. 26th
  - 3. 24th
  - 4. 25th

Question ID : **98958010764**  
Status : **Not Answered**  
Chosen Option : --

Q.7 The Battle of \_\_\_\_\_ was fought in 326 BC by Alexander, the Great against King Porus.  
1



- Ans
- 1. Panipat
  - 2. Tarain
  - 3. Hydaspes
  - 4. Plassey

Question ID : 98958010779  
Status : Answered  
Chosen Option : 2

Q.7 Nagaland became a part of the Union of India in the year 1963 by the \_\_\_\_\_ Amendment to the Constitution of India.  
2

- Ans
- 1. 13<sup>th</sup>
  - 2. 14<sup>th</sup>
  - 3. 16<sup>th</sup>
  - 4. 17<sup>th</sup>

Question ID : 98958010784  
Status : Not Answered  
Chosen Option : --

Q.7 The Committee headed by Deputy Election Commissioner \_\_\_\_\_ has submitted the report on revisiting the Section  
3 126 of the Representation of the People Act.

- Ans
- 1. Umesh Sinha
  - 2. Achal Kumar Jyoti
  - 3. Nasim Zaidi
  - 4. Chandra Bhushan Kumar

Question ID : 98958010754  
Status : Answered  
Chosen Option : 1

Q.7 Where is the Duncan Pass located?  
4

- Ans
- 1. Goa
  - 2. The Andaman and Nicobar Islands
  - 3. Andhra Pradesh
  - 4. Telangana

Question ID : 98958010791  
Status : Not Answered  
Chosen Option : --

Q.7 Which of the following is NOT a tributary of the Indus River?  
5

- Ans
- 1. Shyok
  - 2. Zaskar
  - 3. Nubra

✓ 4. Lohit

Question ID : 98958010775  
Status : Not Answered  
Chosen Option : --

Q.7  
6 \_\_\_\_\_ is the study of fungi.

- Ans
- 1. Gerontology
  - 2. Chronobiology
  - 3. Mycology
  - 4. Geobiology

Question ID : 98958010749  
Status : Answered  
Chosen Option : 3

Q.7  
7 'Angry Akku' by \_\_\_\_\_ received The Hindu Young World-Goodbooks Award for Best Picture Book: Story in The Hindu Literary Prize 2018 which was awarded during The Hindu Lit for Life 2019.

- Ans
- 1. Vinayak Varma
  - 2. Mamta Nainy
  - 3. Neelum Saran Gour
  - 4. Rajiv Eipe

Question ID : 98958010748  
Status : Not Answered  
Chosen Option : --

Q.7  
8 The Tropic of Cancer passes through 8 Indian states. Which of the following is NOT one of them?

- Ans
- 1. West Bengal
  - 2. Assam
  - 3. Rajasthan
  - 4. Chhattisgarh

Question ID : 98958010776  
Status : Answered  
Chosen Option : 2

Q.7  
9 Which of the following is NOT one of the great paradigms of biology?

- Ans
- 1. Establishment of comparative biochemistry
  - 2. Archimedes' principle
  - 3. Mendel's laws of inheritance
  - 4. Darwin's theory of evolution

Question ID : 98958010777

Status : **Answered**  
Chosen Option : 2

Q.8 An Indian team of scientists led by \_\_\_\_\_ of Physical Research Laboratory (PRL), have discovered a sub-Saturn or super-Neptune size planet around a Sun-like star.

- Ans
- 1. K Radha Krishnan
  - 2. Padmanaban
  - 3. Professor Abhijit Chakraborty
  - 4. Abhas Mitra

Question ID : 98958010792  
Status : **Not Answered**  
Chosen Option : --

Q.8 Which among the following is a dance form from the state of Arunachal Pradesh?

- Ans
- 1. Sattriya
  - 2. Bhavai
  - 3. Purbi
  - 4. Popir

Question ID : 98958010781  
Status : **Not Answered**  
Chosen Option : --

Q.8 \_\_\_\_\_ is a New Year Celebration of Sikkimese Bhutia which falls in the 10<sup>th</sup> month of the Sikkimese Lunar calendar.

- Ans
- 1. Ashura
  - 2. Sonam Losoong
  - 3. Vesak
  - 4. Thai Pongal

Question ID : 98958010780  
Status : **Not Answered**  
Chosen Option : --

Q.8 Which amongst the following is NOT one of the four main factors of production?

- Ans
- 1. Entrepreneurship
  - 2. Expenditure
  - 3. Land
  - 4. Labour

Question ID : 98958010783  
Status : **Answered**  
Chosen Option : 1

Q.8 The \_\_\_\_\_ dynasty which ruled North India from 1206 to 1290 was established by Qutbuddin Aibak.

4

- Ans  1. Slave  
 2. Khilji  
 3. Lodi  
 4. Tughlaq

Question ID : 98958010763  
Status : Answered  
Chosen Option : 2

Q.8 The 18th Asian Games were held in the cities of \_\_\_\_\_ and \_\_\_\_\_ in Indonesia from August 18 to September 2, 2018.

- Ans  1. Medan and Makassar  
 2. Jakarta and Palembang  
 3. Malang and Padang  
 4. Bandung and Surabaya

Question ID : 98958010774  
Status : Answered  
Chosen Option : 2

Q.8 \_\_\_\_\_ became the fourth Indian wicket-keeper to take five catches on Test debut.

- Ans  1. Rishabh Pant  
 2. Naman Ojha  
 3. Dinesh Karthik  
 4. Parthiv Patel

Question ID : 98958010765  
Status : Answered  
Chosen Option : 1

Q.8 Indian athlete \_\_\_\_\_ won gold medal in women's Heptathlon Athletics event at 18th edition of Asian Games held in Jakarta-Palembang in Indonesia.

- Ans  1. Anjali Bhagwat  
 2. Anju Bobby  
 3. Sakshi Malik  
 4. Swapna Barman

Question ID : 98958010761  
Status : Answered  
Chosen Option : 4

Q.8 Post the Anglo-Mysore wars, whom did the East India Company appoint as the Governor of Bengal?

- Ans  1. Sir Charles Metcalfe  
 2. Lord Hardinge

3. Warren Hastings

4. Robert Clive

Question ID : 98958010757  
Status : Answered  
Chosen Option : 3

Q.8 Union Minister of State for \_\_\_\_\_ Shri Shripad Yesso Naik, inaugurated the 2nd World Integrated Medicine Forum  
9 2019.

Ans  1. AYUSH

2. Chemicals and Fertilizers

3. Human Resource Development

4. Health

Question ID : 98958010771  
Status : Not Answered  
Chosen Option : --

Q.9 The Delhi High Court has allowed the release of the movie '72 Hours – Martyr who never died', based on the life of the  
0 1962 war hero Rifleman \_\_\_\_\_ who was posthumously awarded the Maha Vir Chakra for gallantry.

Ans  1. Rajendra Singh

2. Harbans Singh Virk

3. Jaswant Singh Rawat

4. Man Mohan Khanna

Question ID : 98958010760  
Status : Not Answered  
Chosen Option : --

Q.9 The Union Minister for Civil Aviation \_\_\_\_\_ released the Vision 2040 document in the Global Aviation Summit 2019.  
1

Ans  1. Nirmala Sitharaman

2. Piyush Goyal

3. Prakash Javadekar

4. Suresh Prabhu

Question ID : 98958010744  
Status : Answered  
Chosen Option : 1

Q.9 NASA's \_\_\_\_\_ spacecraft has been studying Jupiter for almost two years since the year 2016.  
2

Ans  1. Luno

2. Munio

3. Juno

4. Bruno

Question ID : 98958010790



Status : **Not Answered**  
Chosen Option : --

Q.9  
3 Panthi is a dance form from which of the following states?

- Ans
- 1. Chhattisgarh
  - 2. Bihar
  - 3. Rajasthan
  - 4. Odisha

Question ID : **98958010766**  
Status : **Not Answered**  
Chosen Option : --

Q.9  
4 Kalhana penned the book named \_\_\_\_\_ in 12th century which is a metrical historical chronicle of the kings of Kashmir.

- Ans
- 1. Tarikh-i-Firuz Shahi
  - 2. Rajatarangini
  - 3. Nuh Sipihir
  - 4. Padmavat

Question ID : **98958010762**  
Status : **Not Answered**  
Chosen Option : --

Q.9  
5 Renowned writer Namita Gokhale was awarded \_\_\_\_\_ for her work 'Things to Leave Behind' under the 'Best Book of Fiction written by a Woman Author' category at the inaugural edition of Bhopal Literature and Art Festival.

- Ans
- 1. Yuva Puraskar Award
  - 2. Sahitya Academy Award
  - 3. Sushila Devi Literature Award
  - 4. Jnanpith Award

Question ID : **98958010751**  
Status : **Not Answered**  
Chosen Option : --

Q.9  
6 The High Court of Kerala had disqualified an independent MLA \_\_\_\_\_ from the Koduvally Assembly constituency for his defamatory campaign against the rival candidate during the 2016 Assembly polls.

- Ans
- 1. Kamal Nath
  - 2. Himanta Biswa Sarma
  - 3. Karat Razack
  - 4. Ahmed Patel

Question ID : **98958010756**  
Status : **Not Answered**  
Chosen Option : --

Q.9  
7 Who was the first Vice President of independent India?



- Ans
- 1. Gopal Pathak
  - 2. Kishan Kant
  - 3. Sarvepalli Radhakrishnan
  - 4. KR Narayanan

Question ID : 98958010785  
Status : Answered  
Chosen Option : 3

Q.9 Eminent economist and columnist \_\_\_\_\_ has resigned as part-time member of Economic Advisory Council to the Prime Minister (EAC-PM) in December 2018.

- Ans
- 1. Urijit Patel
  - 2. Shivshankar Menon
  - 3. Arvind Subramanian
  - 4. Surjit Bhalla

Question ID : 98958010773  
Status : Not Answered  
Chosen Option : --

Q.9 The \_\_\_\_\_ was awarded the International Gandhi Peace Prize 2017 for its work in the field of education for rural and tribal children, rural empowerment and gender and social equality.

- Ans
- 1. Ekal Abhiyan Trust
  - 2. Sulabh International
  - 3. Akshaya Patra Foundation
  - 4. Vivekananda Kendra

Question ID : 98958010753  
Status : Not Answered  
Chosen Option : --

Q.1 Molecular mass of Sulphurous acid is:

- 00
- Ans
- 1. 87.06
  - 2. 98.07
  - 3. 82.07
  - 4. 96.04

Question ID : 98958010787  
Status : Not Answered  
Chosen Option : --

Q.1 The Square root of which of the following is a rational number?

- 01
- Ans
- 1. 72568.4
  - 2. 2361.96
  - 3. 2758.28

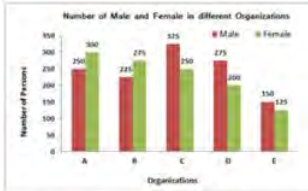
4. 62504.9

Question ID : 98958010844

Status : Not Answered

Chosen Option : --

Q.1  
02



In the given bar graph, in which organisation, the percentage difference between the males and females is maximum, by considering total persons in that organisation as base?

- Ans
- 1. C
  - 2. B
  - 3. E
  - 4. D

Question ID : 98958010886

Status : Answered

Chosen Option : 4

Q.1  
03 If a train runs with the speed of 36 km/h, it reaches its destination 15 minutes late. However, if its speed is 45 km/h, it is late by only 4 minutes. The correct time to cover its journey in minutes is:

- Ans
- 1. 27
  - 2. 22
  - 3. 25
  - 4. 40

Question ID : 98958010867

Status : Not Attempted and Marked For Review

Chosen Option : --

Q.1  
04 The radius of a cylinder is increased by 150% and its height is increased by 50%. What is the percentage increase in its volume?

- Ans
- 1. 375%
  - 2. 837.5%
  - 3. 775.75%
  - 4. 625.5%

Question ID : 98958010873

Status : Answered

Chosen Option : 2

Q.1  
05 The price sugar has increased by 18%. By what percentage can a person decrease the consumption so that, there is no change in the expenditure? (correct to one decimal place)

- Ans
- 1. 15.7%
  - 2. 15.3%
  - 3. 15.5%
  - 4. 15.9%

Question ID : 98958010856

Status : Answered

Chosen Option : 2

Q.1  
06 If  $a^3 - b^3 = 1603$  and  $(a - b) = 7$ , then  $(a + b)^2 - ab$  is equal to:

- Ans
- 1. 458
  - 2. 229
  - 3. 648
  - 4. 338

Question ID : 98958010875

Status : Answered

Chosen Option : 2

Q.1  
07 A boat can go 20 km downstream and 30 km upstream in 2 hours 20 minutes. Also, it can go 10 km downstream and 8 km upstream in 49 minutes. What is the speed of boat downstream in km/h?

- Ans
- 1. 24
  - 2. 18
  - 3. 20
  - 4. 16

Question ID : 98958010868

Status : Not Attempted and Marked For Review

Chosen Option : --

Q.1  
08 Pipes A and B can fill a tank in 12 hours and 16 hours respectively and pipe C can empty the full tank in 24 hours. All three pipes are opened together, but after 4 hours pipe A is closed. In how many hours from the beginning the tank be filled?

- Ans
- 1. 32
  - 2. 24
  - 3. 28
  - 4. 30

Question ID : 98958010865

Status : Answered

Chosen Option : 1

Q.1  
09 8 cubes, each of edge 5 cm, are joined end to end. What is the total surface area of the resulting cuboid?

- Ans
- 1.  $1200 \text{ cm}^2$
  - 2.  $800 \text{ cm}^2$
  - 3.  $850 \text{ cm}^2$
  - 4.  $825 \text{ cm}^2$

Question ID : 98958010871

Status : Not Attempted and Marked For Review

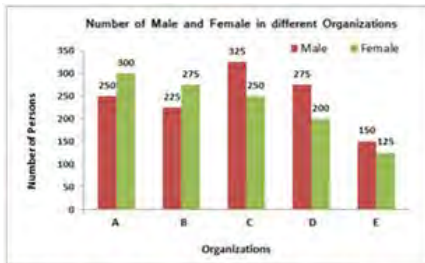
Chosen Option : --

Q.1  
10 If the seven digit number  $56x34y4$  is divisible by 72, then what is the least value of  $(x + y)$ ?

- Ans  1. 5  
 2. 14  
 3. 8  
 4. 12

Question ID : 98958010845  
 Status : Answered  
 Chosen Option : 4

Q.1  
11



In the given bar graph, what is the average number of females in all five organisations?

- Ans  1. 230  
 2. 235  
 3. 225  
 4. 245

Question ID : 98958010887  
 Status : Answered  
 Chosen Option : 1

Q.1 The average of 22 numbers is 52. The average of the first 8 numbers is 48 and the average of next 11 numbers is 54. The  
 12 20<sup>th</sup> number is 7 less than the 21<sup>st</sup> number and 21<sup>st</sup> number is 4 more than 22<sup>nd</sup> number. What is the average of the 20<sup>th</sup> and 22<sup>nd</sup> numbers?

- Ans  1. 53,5  
 2. 53  
 3. 52  
 4. 52,5

Question ID : 98958010852  
 Status : Not Answered  
 Chosen Option : --

Q.1 ABCD is a cyclic quadrilateral such that AB is the diameter of the circle circumscribing it and  $\angle ADC = 155^\circ$ , then what  
 13 is the measure of  $\angle BAC$ ?

- Ans  1.  $35^\circ$   
 2.  $55^\circ$   
 3.  $45^\circ$   
 4.  $65^\circ$

Question ID : 98958010877  
 Status : Not Answered  
 Chosen Option : --

Q.1

14 A sum of ₹ 12,000 is invested for 15 months at 10% per annum compounded half yearly. What is the percentage gain, at the end of 15 months, correct to one decimal place?

- Ans
- 1. 13.1%
  - 2. 13.0%
  - 3. 12.9%
  - 4. 12.8%

Question ID : 98958010862

Status : Not Attempted and Marked For Review

Chosen Option : --

Q.1 In a class of 70 students, 40% are girls and remaining are boys. The average marks of the boys are 63 and that of the girls are 70. What is the average marks of the whole class?  
15

- Ans
- 1. 65.4
  - 2. 64.8
  - 3. 65.8
  - 4. 65.2

Question ID : 98958010851

Status : Answered

Chosen Option : 3

Q.1 In  $\triangle ABC$ ,  $\angle A = 40^\circ$ . If the bisectors of the  $\angle B$  and  $\angle C$ , meet at a point O, then  $\angle BOC$  is equal to:  
16

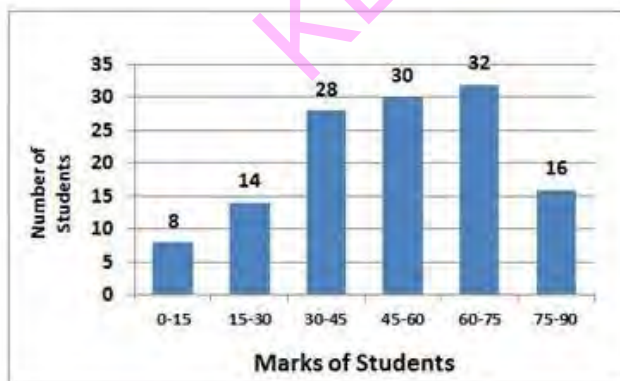
- Ans
- 1.  $70^\circ$
  - 2.  $110^\circ$
  - 3.  $130^\circ$
  - 4.  $90^\circ$

Question ID : 98958010879

Status : Answered

Chosen Option : 2

Q.1  
17



In the given histogram, in which class interval, the median marks lies?

- Ans
- 1. 60-75
  - 2. 30-45
  - 3. 15-30
  - 4. 45-60

Question ID : 98958010892

Status : Answered

Chosen Option : 4

Q.1  
18 The value of  $3\frac{5}{6} + \left[3\frac{2}{3} - \left\{\frac{15}{4} \left(5\frac{4}{5} \div 14\frac{1}{2}\right)\right\}\right]$  is equal to:

Ans  1. 6

2.  $\frac{37}{6}$

3.  $\frac{35}{6}$

4.  $\frac{19}{3}$

Question ID : 98958010848

Status : Not Answered

Chosen Option : --

Q.1  
19 One side of a rhombus is 26 cm and one of the diagonal is 48 cm. What is the area of the rhombus?

Ans  1. 624 cm<sup>2</sup>

2. 520 cm<sup>2</sup>

3. 480 cm<sup>2</sup>

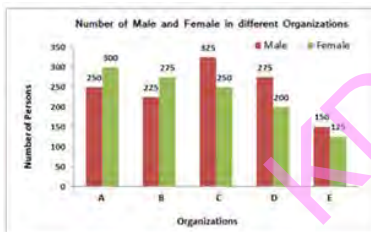
4. 580 cm<sup>2</sup>

Question ID : 98958010869

Status : Answered

Chosen Option : 3

Q.1  
20



In the given bar graph, what is the ratio of the total males and females working in all organisations?

Ans  1. 35 : 46

2. 49 : 46

3. 46 : 40

4. 46 : 35

Question ID : 98958010885

Status : Answered

Chosen Option : 2

Q.1  
21 From a point P outside the circle with centre O, two tangents PA and PB are drawn to meet the circle at A and B respectively. If  $\angle APB = 70^\circ$ , then  $\angle OAB$  is equal to:

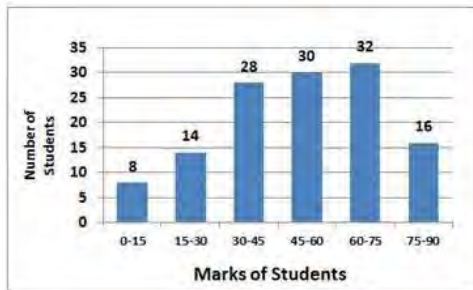
Ans  1. 45°



- 2.  $55^\circ$
- 3.  $35^\circ$
- 4.  $65^\circ$

Question ID : 98958010878  
 Status : Not Attempted and Marked For Review  
 Chosen Option : --

Q.1  
22



In the given histogram, what is the mean marks of the students, correct to one decimal place?

- Ans
- 1. 51.2
  - 2. 52.7
  - 3. 50.6
  - 4. 53.5

Question ID : 98958010893  
 Status : Not Answered  
 Chosen Option : --

Q.1 What is the ratio of mean proportional between 1.8 and 3.2 and the third proportional of 5 and 3?  
23

- Ans
- 1. 3 : 5
  - 2. 3 : 4
  - 3. 4 : 3
  - 4. 5 : 3

Question ID : 98958010859  
 Status : Not Answered  
 Chosen Option : --

Q.1 Two pipes A and B can fill an empty tank in 10 hours and 16 hours respectively. They are opened alternately for 1 hour each, starting with pipe A first. In how many hours, the empty tank will be filled?  
24

- Ans
- 1.  $12\frac{1}{6}$
  - 2.  $12\frac{1}{8}$
  - 3.  $12\frac{1}{3}$
  - 4.  $12\frac{1}{4}$

Question ID : 98958010866  
 Status : Answered  
 Chosen Option : 4

Q.1 The angle of elevation of top of a tower from a point P, on the ground is  $\theta$  such that  $\tan \theta = \frac{12}{5}$ . If distance of the point P, from the base of the tower is 75 m, what is the height of the tower?

- 25
- Ans  1. 180 m  
 2. 200 m  
 3. 190 m  
 4. 160 m

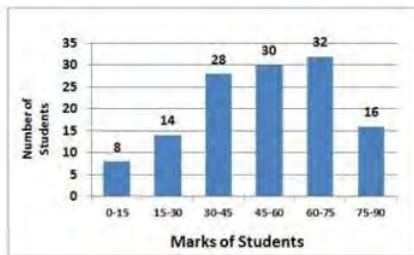
Question ID : 98958010883  
Status : Answered  
Chosen Option : 1

Q.1 A shopkeeper marks an article at a price such that after giving a discount of 25%, the gains  $x\%$ . If the cost price and the marked price of the article are ₹ 460 and ₹ 736 respectively, what is the value of  $x$ ?

- 26
- Ans  1. 24%  
 2. 20%  
 3. 18%  
 4. 16%

Question ID : 98958010853  
Status : Answered  
Chosen Option : 2

Q.1  
27



In the given histogram, what percentage of students got marks less than 45? (Correct to one decimal place)

- Ans  1. 39.4%  
 2. 39.6%  
 3. 38.8%  
 4. 39.1%

Question ID : 98958010891  
Status : Answered  
Chosen Option : 2

Q.1 In an examination, 53% of the candidates failed in science and 48% failed in mathematics. If 40% failed in both subjects, what percentage passed in both subjects?

- 28
- Ans  1. 49%  
 2. 39%  
 3. 51%  
 4. 43%

Question ID : 98958010857  
Status : Not Attempted and Marked For Review

Chosen Option : --

Q.1 29 If the income of A is 40% more than the income of B, then by what percentage is B's income less than that income of A?

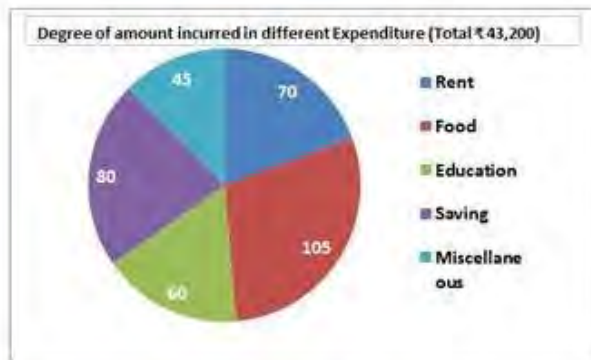
- Ans
- ✓ 1.  $\frac{200}{7}\%$
  - ✗ 2.  $\frac{230}{7}\%$
  - ✗ 3. 56%
  - ✗ 4. 25%

Question ID : 98958010855

Status : Answered

Chosen Option : 3

Q.1 30



In the given pie-chart, what is the total expenditure on rent?

- Ans
- ✓ 1. ₹ 8,400
  - ✗ 2. ₹ 8,900
  - ✗ 3. ₹ 8,600
  - ✗ 4. ₹ 8,800

Question ID : 98958010888

Status : Answered

Chosen Option : 1

Q.1 31 A sphere of radius 7 cm is melted and recast into small spheres of radius 2 cm each. How many such spheres can be made?

- Ans
- ✗ 1. 40
  - ✗ 2. 43
  - ✓ 3. 42
  - ✗ 4. 41

Question ID : 98958010872

Status : Not Attempted and Marked For Review

Chosen Option : --

Q.1 32 If  $\sin(A + B) = \frac{\sqrt{3}}{2}$  and  $\tan(A - B) = \frac{1}{\sqrt{3}}$ , then  $(2A + 3B)$  is equal to:

Ans

- 1.  $125^\circ$
- 2.  $130^\circ$
- 3.  $120^\circ$
- 4.  $135^\circ$

Question ID : 98958010881  
Status : Answered  
Chosen Option : 4

Q.1  
33 If  $x + \frac{1}{x} = 8$ , then  $x^2 + \frac{1}{x^2}$  is equal to:

- Ans
- 1. 66
  - 2. 68
  - 3. 64
  - 4. 62

Question ID : 98958010874  
Status : Answered  
Chosen Option : 4

Q.1  
34 A sum of ₹ 15,600 is invested partly at 7% per annum and the remaining at 9% per annum simple interest. If the total interest at the end of 3 years is ₹ 3,738, how much money was invested at 7% per annum?

- Ans
- 1. ₹ 7,600
  - 2. ₹ 7,900
  - 3. ₹ 7,700
  - 4. ₹ 7,800

Question ID : 98958010861  
Status : Not Answered  
Chosen Option : --

Q.1  
35 The efficiencies of A, B and C are in the ratio 2 : 5 : 7 working together, they can complete a work in 10 days. In how many days will A alone be able to complete 30% of that work?

- Ans
- 1. 30
  - 2. 28
  - 3. 20
  - 4. 21

Question ID : 98958010864  
Status : Not Attempted and Marked For Review  
Chosen Option : --

Q.1  
36 From the top of 75 m high tower, the angle of depression of two points P and Q on opposite side of the base of the tower on level ground is  $\theta$  and  $\phi$ , such that  $\tan \theta = \frac{3}{4}$  and  $\tan \phi = \frac{5}{8}$ . What is the distance between the points P and Q?

- Ans
- 1. 220 m
  - 2. 200 m
  - 3. 190 m
  - 4. 180 m

Question ID : 98958010884

Status : Not Answered

Chosen Option : --

Q.1 37 Let  $\Delta ABC \sim \Delta RPQ$  and  $\frac{ar(\Delta ABC)}{ar(\Delta PQR)} = \frac{1}{4}$ . If  $PQ = 4$  cm,  $QR = 6$  cm and  $PR = 7$  cm, then  $AC$  is equal to:

- Ans
- 1. 2 cm
  - 2. 3 cm
  - 3. 3.5 cm
  - 4. 4 cm

Question ID : 98958010880

Status : Answered

Chosen Option : 3

Q.1 38  $\frac{6.75 \times 6.75 \times 6.75 - 4.25 \times 4.25 \times 4.25}{67.5 \times 67.5 + 42.5 \times 42.5 + 67.5 \times 42.5}$  is equal to:

- Ans
- 1. 0.25
  - 2. 0.0025
  - 3. 2.5
  - 4. 0.025

Question ID : 98958010850

Status : Answered

Chosen Option : 3

Q.1 39



In the given pie-chart, total expenditure together on rent and education is what percent less than total expenditure of food and miscellaneous items?

- Ans
- 1. 30%
  - 2.  $\frac{40}{3}$  %
  - 3. 26%
  - 4.  $\frac{200}{13}$  %

Question ID : 98958010890

Status : Answered

Chosen Option : 2

Q.1 40 The successive discounts of 20%, 10% and 8% is equivalent to a single discount of:

- Ans
- 1. 66.24%
  - 2. 33.76%

3. 38%

4. 32.84%

Question ID : 98958010854

Status : Answered

Chosen Option : 2

Q.1  
41  $5\frac{1}{5} - \left[ 3\frac{1}{2} - \left\{ \frac{5}{6} - \left( \frac{3}{5} + \frac{1}{10} - \frac{4}{15} \right) \right\} \right]$  is equal to:

Ans  1.  $\frac{7}{5}$

2.  $\frac{8}{3}$

3.  $\frac{7}{3}$

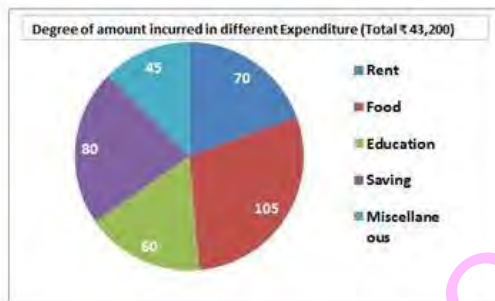
4.  $\frac{21}{10}$

Question ID : 98958010849

Status : Not Answered

Chosen Option : --

Q.1  
42



In the given pie-chart, the amount spend on education is what percent of the savings?

Ans  1. 60%

2. 75%

3. 80%

4. 70%

Question ID : 98958010889

Status : Answered

Chosen Option : 2

Q.1  
43 If  $(x + 4)^3 + (2x + 1)^3 + (2x + 5)^3 = (3x + 12)(2x + 1)(2x + 5)$ , then what is the value of  $x$ ?

Ans  1. 2

2. -2

3. -3

4. 3

Question ID : 98958010876

Status : Not Attempted and Marked For Review

Chosen Option : --



Q.1 44 A shopkeeper sold two articles for ₹ 9639 each. On one, he gained 19% and on the other, he lost 19%. What is the overall percentage gain or loss?

- Ans
- 1. 3.61% loss
  - 2. 3.81% gain
  - 3. 3.61% gain
  - 4. 3.81% loss

Question ID : 98958010858  
Status : Answered  
Chosen Option : 1

Q.1 45 The value of  $\sin^2 30^\circ \cdot \cos^2 45^\circ + 2 \tan^2 30^\circ - \sec^2 60^\circ$  is equal to:

- Ans
- 1.  $-\frac{77}{24}$
  - 2.  $-\frac{25}{12}$
  - 3.  $-\frac{13}{12}$
  - 4.  $-\frac{1}{12}$

Question ID : 98958010882  
Status : Not Answered  
Chosen Option : --

Q.1 46 18 persons working 8 hours a day can complete 3 units of works in 10 days. How many persons are required to complete 5 units of that work in 16 days working 6 hours a day?

- Ans
- 1. 9
  - 2. 20
  - 3. 25
  - 4. 15

Question ID : 98958010863  
Status : Answered  
Chosen Option : 3

Q.1 47 What is the sum of the digits of the least number, which when divided by 15, 15 and 27 leaves the same remainder 9 in each case and is also completely divisible by 11?

- Ans
- 1. 17
  - 2. 19
  - 3. 20
  - 4. 18

Question ID : 98958010847  
Status : Not Answered  
Chosen Option : --

Q.1 48 Two numbers are in the ratio 5 : 11. If their HCF is 24, then the sum of two these numbers is:

- Ans
- 1. 120
  - 2. 384
  - 3. 408
  - 4. 264

Question ID : 98958010846  
Status : Answered  
Chosen Option : 2

Q.1 The sides of a triangle are 16 cm, 30 cm and 34 cm respectively. At each vertices, circles of radius 7 cm are drawn.  
49 What is the area of the triangle, excluding the portion covered by the sectors of the triangle? ( $\pi = \frac{22}{7}$ )

- Ans
- 1. 86 cm<sup>2</sup>
  - 2. 172 cm<sup>2</sup>
  - 3. 163 cm<sup>2</sup>
  - 4. 196 cm<sup>2</sup>

Question ID : 98958010870  
Status : Not Answered  
Chosen Option : --

Q.1 A, B and C started a business by investing ₹ 27,500, ₹ 32,500 and ₹ 37,500 respectively. A is a working partner and  
50 gets 20% of profit as working allowance and the remaining is distributed in proportion of their investments. If the money received by C is ₹ 13,500, What is total profit?

- Ans
- 1. ₹ 35,100
  - 2. ₹ 42,750
  - 3. ₹ 43,875
  - 4. ₹ 38,425

Question ID : 98958010860  
Status : Not Answered  
Chosen Option : --

Q.1 Select the most appropriate words to fill in the blanks.  
51

I expect to return \_\_\_\_\_ Mumbai \_\_\_\_\_ March 15.

- Ans
- 1. from; on
  - 2. at; in
  - 3. to; at
  - 4. from; in

Question ID : 98958010501  
Status : Answered  
Chosen Option : 1

Comprehension:

In the following passage some words have been deleted. Fill in the blanks with the help of the alternatives given. Select the most appropriate option for each number.

Wild monkeys are a problem for farmers in many areas in Japan. \_\_\_\_\_ (1) often come out of the woods to \_\_\_\_\_ (2) the tasty vegetables and fruit on farms. \_\_\_\_\_ (3) year, they cause heavy damage to crops. \_\_\_\_\_ (4) the farmers are fighting back. In 2005, a small village in Nagano \_\_\_\_\_ (5) a program to protect crops with the help of dogs. They are known as monkey dogs, and they are trained to scare monkeys away.

SubQuestion No : 152

Q.1  
52 Select the most appropriate option to fill in blank No.1.

- Ans
- 1. Those
  - 2. They
  - 3. Them
  - 4. It

Question ID : 98958010506  
Status : Answered  
Chosen Option : 2

Comprehension:

In the following passage some words have been deleted. Fill in the blanks with the help of the alternatives given. Select the most appropriate option for each number.

Wild monkeys are a problem for farmers in many areas in Japan. \_\_\_\_\_ (1) often come out of the woods to \_\_\_\_\_ (2) the tasty vegetables and fruit on farms. \_\_\_\_\_ (3) year, they cause heavy damage to crops. \_\_\_\_\_ (4) the farmers are fighting back. In 2005, a small village in Nagano \_\_\_\_\_ (5) a program to protect crops with the help of dogs. They are known as monkey dogs, and they are trained to scare monkeys away.

SubQuestion No : 153

Q.1  
53 Select the most appropriate option to fill in blank No.2.

- Ans
- 1. cut
  - 2. eat
  - 3. get
  - 4. waste

Question ID : 98958010507  
Status : Answered  
Chosen Option : 2

Comprehension:

In the following passage some words have been deleted. Fill in the blanks with the help of the alternatives given. Select the most appropriate option for each number.

Wild monkeys are a problem for farmers in many areas in Japan. \_\_\_\_\_ (1) often come out of the woods to \_\_\_\_\_ (2) the tasty vegetables and fruit on farms. \_\_\_\_\_ (3) year, they cause heavy damage to crops. \_\_\_\_\_ (4) the farmers are fighting back. In 2005, a small village in Nagano \_\_\_\_\_ (5) a program to protect crops with the help of dogs. They are known as monkey dogs, and they are trained to scare monkeys away.

SubQuestion No : 154

Q.1  
54 Select the most appropriate option to fill in blank No.3.

- Ans
- 1. All
  - 2. Whole
  - 3. Every
  - 4. This

Question ID : 98958010508  
Status : Answered  
Chosen Option : 3

Comprehension:

In the following passage some words have been deleted. Fill in the blanks with the help of the alternatives given. Select the most appropriate option for each number.

Wild monkeys are a problem for farmers in many areas in Japan. \_\_\_\_\_ (1) often come out of the woods to \_\_\_\_\_ (2) the tasty vegetables and fruit on farms. \_\_\_\_\_ (3) year, they cause heavy damage to crops. \_\_\_\_\_ (4) the farmers are fighting back. In 2005, a small village in Nagano \_\_\_\_\_ (5) a program to protect crops with the help of dogs. They are known as monkey dogs, and they are trained to scare monkeys away.

SubQuestion No : 155

Q.1  
55 Select the most appropriate option to fill in blank No.4.

- Ans
- 1. However
  - 2. Moreover
  - 3. Because
  - 4. Though

Question ID : 98958010509  
Status : Answered  
Chosen Option : 1

Comprehension:



In the following passage some words have been deleted. Fill in the blanks with the help of the alternatives given. Select the most appropriate option for each number.

Wild monkeys are a problem for farmers in many areas in Japan. \_\_\_\_\_ (1) often come out of the woods to \_\_\_\_\_ (2) the tasty vegetables and fruit on farms. \_\_\_\_\_ (3) year, they cause heavy damage to crops. \_\_\_\_\_ (4) the farmers are fighting back. In 2005, a small village in Nagano \_\_\_\_\_ (5) a program to protect crops with the help of dogs. They are known as monkey dogs, and they are trained to scare monkeys away.

SubQuestion No : 156

Q.1 56 Select the most appropriate option to fill in blank No.5.

- Ans
- 1. instigated
  - 2. continued
  - 3. embarked
  - 4. started

Question ID : 98958010510  
Status : Answered  
Chosen Option : 4

Q.1 57 Select the most appropriate meaning of the given idiom.

the whole nine yards

- Ans
- 1. an act of kindness
  - 2. an enjoyable situation
  - 3. an essential part
  - 4. the entirety of something

Question ID : 98958010524  
Status : Answered  
Chosen Option : 4

Q.1 58 Select the most appropriate option to substitute the underlined segment in the given sentence. If there is no need to substitute it, Select No improvement.

The Kumbh Mela has been held at Allahabad, since centuries now because in the past two decades it has grown into a mega event.

- Ans
- 1. since centuries now but in the past
  - 2. for centuries now but in the past
  - 3. No improvement
  - 4. for centuries now moreover in the past

Question ID : 98958010499

Status : Answered

Chosen Option : 2

Q.1 59 Select the most appropriate option to substitute the underlined segment in the given sentence. If there is no need to substitute it, Select No improvement.

He has not taken any coaching in the game but he plays good than many professional players.

- Ans
- 1. No improvement
  - 2. He is playing good than
  - 3. he plays the best than
  - 4. he plays better than

Question ID : 98958010496

Status : Answered

Chosen Option : 4

Q.1 60 In the sentence identify the segment which contains the grammatical error.

The village, with all its houses, were flooded by the river.

- Ans
- 1. were flooded
  - 2. by the river
  - 3. with all
  - 4. its houses

Question ID : 98958010490

Status : Answered

Chosen Option : 4

Q.1 61 Select the synonym of the given word.

RADICAL

- Ans
- 1. absolute
  - 2. trivial
  - 3. moderate
  - 4. minor

Question ID : 98958010515

Status : Answered

Chosen Option : 1

Q.1  
62



Select the most appropriate word to fill in the blank.

The offer is good. You will regret \_\_\_\_\_ you decline it.

- Ans
- 1. unless
  - 2. whether
  - 3. therefore
  - 4. if

Question ID : 98958010502  
Status : Answered  
Chosen Option : 4

Q.1  
63 Select the wrongly spelt word.

- Ans
- 1. voyage
  - 2. visionary
  - 3. violin
  - 4. vecious

Question ID : 98958010534  
Status : Answered  
Chosen Option : 4

Q.1  
64 In the sentence identify the segment which contains the grammatical error.

Neither I nor my sisters was interested in learning music.

- Ans
- 1. Neither I
  - 2. nor my sisters
  - 3. was interested
  - 4. in learning music.

Question ID : 98958010491  
Status : Answered  
Chosen Option : 3

Q.1  
65 Select the most appropriate word to fill in the blank.

After three months of practice, I \_\_\_\_\_ now swim quite fast.

- Ans
- 1. cannot
  - 2. could
  - 3. can
  - 4. should

Question ID : 98958010500

Status : Answered

Chosen Option : 2

Q.1  
66 Select the antonym of the given word.

IMPECCABLE

- Ans
- 1. faultless
  - 2. unsullied
  - 3. methodical
  - 4. imperfect

Question ID : 98958010520

Status : Answered

Chosen Option : 4

Q.1  
67 Select the antonym of the given word.

AMIABLE

- Ans
- 1. comfortable
  - 2. friendly
  - 3. cordial
  - 4. hostile

Question ID : 98958010518

Status : Answered

Chosen Option : 4

Q.1  
68 Select the wrongly spelt word.

- Ans
- 1. illumination
  - 2. explanation
  - 3. acquisition
  - 4. competition

Question ID : 98958010535

Status : Answered

Chosen Option : 3

Q.1  
69 Select the most appropriate word for the given group of words.

a large bound bundle of paper, hay or cotton

- Ans
- 1. barrel
  - 2. bale
  - 3. gale
  - 4. cache

Question ID : 98958010526  
Status : Answered  
Chosen Option : 1

Q.1 Select the most appropriate option to substitute the underlined segment in the given sentence. If there is no need to substitute it, Select No improvement.

70

Not only she objected to his proposal but also condemned it in strong terms.

- Ans
- 1. Not only she had objected
  - 2. Not only did she object
  - 3. Not only did she objected
  - 4. No improvement

Question ID : 98958010497  
Status : Answered  
Chosen Option : 3

Q.1 Select the most appropriate word to fill in the blank.

71

There was a lot of rubbish on the floor so I asked Sangeeta to sweep \_\_\_\_\_ away.

- Ans
- 1. it
  - 2. this
  - 3. them
  - 4. its

Question ID : 98958010503  
Status : Answered  
Chosen Option : 1

Comprehension:

Read the following passage and answer the questions given after it.

The much-awaited expansion of Delhi's Indira Gandhi International Airport is expected to begin by March-end as the airport operator has received three bids for the R 9,000-crore project, two officials familiar with the matter said.

Two bids are from foreign companies while one is from an Indian firm. The airport operator, the GMR Group-led Delhi International Airport Ltd (DIAL), is expected to finalise the bidder this week. After the announcement, the successful bidder is expected to take around two months to mobilise the workforce and begin expansion work.

The bid document says the selected company has to complete work in 42 months. All the three bidders are reported to have quoted 39 months, the sources said.

The expansion is aimed to meet the rapid traffic growth that has already made IGI Asia's seventh busiest airport. The selected company will work on the expansion of Terminal 1 and Terminal 3 and the construction of a new runway and taxiways. Roads leading to the airport will be widened and new approach roads will be built.

The operator expects the expansion, which will start with Terminal 1, to be completed by 2021 — taking the overall handling capacity of the airport to 85 million passengers per year from the current 70 million. It will be followed by Phase 2 of the expansion, which includes construction of another brand new terminal.

Data released last year by Airports Council International showed that the passenger traffic at the Delhi Airport grew 14.1% year on year to 63.45 million in 2017. It was the first time it breached the 60-million passenger mark. In 2018, it was just below 70-million mark.

The new air traffic control (ATC) tower, which will open in 2019, and the fourth runway, to be launched in 2021, would help it reduce air congestion and handle more flights.

“Terminal 1 handles domestic traffic for low-cost carriers. These have registered a phenomenal growth in the last few years, calling for an expansion of the terminal. Delhi Metro under its Phase 3 programme is connecting this terminal to catchment areas of central and south Delhi. Since T1 is operating beyond its capacity, the expansion will begin from there and cover the airside, terminal building and city side,” said a DIAL official.

According to the Master Plan, T1's capacity will increase from 20 million to 40 million and that of Terminal 3 from 34 million to 45 million.

Inter-terminal connectivity through the Airport Metro between T1 and T3 is also part of the expansion plan.

DIAL has appointed AECOM, a design and development consultant for infrastructure projects, to complete the preliminary design for the expansion work.

SubQuestion No : 172

Q.1  
72 From the reading of the paragraph it can be inferred that it is:

- Ans
- 1. a survey report
  - 2. an airport novel
  - 3. a news item
  - 4. a promotional article

Question ID : 98958010537

Status : Answered

Chosen Option : 1

Comprehension:

KD JOB UPDATES



Read the following passage and answer the questions given after it.

The much-awaited expansion of Delhi's Indira Gandhi International Airport is expected to begin by March-end as the airport operator has received three bids for the R 9,000-crore project, two officials familiar with the matter said.

Two bids are from foreign companies while one is from an Indian firm. The airport operator, the GMR Group-led Delhi International Airport Ltd (DIAL), is expected to finalise the bidder this week. After the announcement, the successful bidder is expected to take around two months to mobilise the workforce and begin expansion work.

The bid document says the selected company has to complete work in 42 months. All the three bidders are reported to have quoted 39 months, the sources said.

The expansion is aimed to meet the rapid traffic growth that has already made IGI Asia's seventh busiest airport. The selected company will work on the expansion of Terminal 1 and Terminal 3 and the construction of a new runway and taxiways. Roads leading to the airport will be widened and new approach roads will be built.

The operator expects the expansion, which will start with Terminal 1, to be completed by 2021 — taking the overall handling capacity of the airport to 85 million passengers per year from the current 70 million. It will be followed by Phase 2 of the expansion, which includes construction of another brand new terminal.

Data released last year by Airports Council International showed that the passenger traffic at the Delhi Airport grew 14.1% year on year to 63.45 million in 2017. It was the first time it breached the 60-million passenger mark. In 2018, it was just below 70-million mark.

The new air traffic control (ATC) tower, which will open in 2019, and the fourth runway, to be launched in 2021, would help it reduce air congestion and handle more flights.

“Terminal 1 handles domestic traffic for low-cost carriers. These have registered a phenomenal growth in the last few years, calling for an expansion of the terminal. Delhi Metro under its Phase 3 programme is connecting this terminal to catchment areas of central and south Delhi. Since T1 is operating beyond its capacity, the expansion will begin from there and cover the airside, terminal building and city side,” said a DIAL official.

According to the Master Plan, T1's capacity will increase from 20 million to 40 million and that of Terminal 3 from 34 million to 45 million.

Inter-terminal connectivity through the Airport Metro between T1 and T3 is also part of the expansion plan.

DIAL has appointed AECOM, a design and development consultant for infrastructure projects, to complete the preliminary design for the expansion work.



SubQuestion No : 173

Q.1  
73 The expansion of the airport will begin from:

- Ans
- 1. Terminal 1 which handles fast growing domestic traffic.
  - 2. Terminal 3 which handles international traffic.
  - 3. Construction of a new runway and taxiways.
  - 4. Construction of a new terminal to handle the increasing load.

Question ID : 98958010538

Status : Answered

Chosen Option : 1

Comprehension:

KD JOB UPDATES

Read the following passage and answer the questions given after it.

The much-awaited expansion of Delhi's Indira Gandhi International Airport is expected to begin by March-end as the airport operator has received three bids for the R 9,000-crore project, two officials familiar with the matter said.

Two bids are from foreign companies while one is from an Indian firm. The airport operator, the GMR Group-led Delhi International Airport Ltd (DIAL), is expected to finalise the bidder this week. After the announcement, the successful bidder is expected to take around two months to mobilise the workforce and begin expansion work.

The bid document says the selected company has to complete work in 42 months. All the three bidders are reported to have quoted 39 months, the sources said.

The expansion is aimed to meet the rapid traffic growth that has already made IGI Asia's seventh busiest airport. The selected company will work on the expansion of Terminal 1 and Terminal 3 and the construction of a new runway and taxiways. Roads leading to the airport will be widened and new approach roads will be built.

The operator expects the expansion, which will start with Terminal 1, to be completed by 2021 — taking the overall handling capacity of the airport to 85 million passengers per year from the current 70 million. It will be followed by Phase 2 of the expansion, which includes construction of another brand new terminal.

Data released last year by Airports Council International showed that the passenger traffic at the Delhi Airport grew 14.1% year on year to 63.45 million in 2017. It was the first time it breached the 60-million passenger mark. In 2018, it was just below 70-million mark.

The new air traffic control (ATC) tower, which will open in 2019, and the fourth runway, to be launched in 2021, would help it reduce air congestion and handle more flights.

“Terminal 1 handles domestic traffic for low-cost carriers. These have registered a phenomenal growth in the last few years, calling for an expansion of the terminal. Delhi Metro under its Phase 3 programme is connecting this terminal to catchment areas of central and south Delhi. Since T1 is operating beyond its capacity, the expansion will begin from there and cover the airside, terminal building and city side,” said a DIAL official.

According to the Master Plan, T1's capacity will increase from 20 million to 40 million and that of Terminal 3 from 34 million to 45 million.

Inter-terminal connectivity through the Airport Metro between T1 and T3 is also part of the expansion plan.

DIAL has appointed AECOM, a design and development consultant for infrastructure projects, to complete the preliminary design for the expansion work.

SubQuestion No : 174

Q.1  
74 In 2018, the number of passengers that the Delhi Airport handled was:

- Ans
- 1. 45 million
  - 2. just below 70 million
  - 3. 40 million
  - 4. 63.45 million

Question ID : 98958010539

Status : Answered

Chosen Option : 2

Comprehension:

KD JOB UPDATES



Read the following passage and answer the questions given after it.

The much-awaited expansion of Delhi's Indira Gandhi International Airport is expected to begin by March-end as the airport operator has received three bids for the R 9,000-crore project, two officials familiar with the matter said.

Two bids are from foreign companies while one is from an Indian firm. The airport operator, the GMR Group-led Delhi International Airport Ltd (DIAL), is expected to finalise the bidder this week. After the announcement, the successful bidder is expected to take around two months to mobilise the workforce and begin expansion work.

The bid document says the selected company has to complete work in 42 months. All the three bidders are reported to have quoted 39 months, the sources said.

The expansion is aimed to meet the rapid traffic growth that has already made IGI Asia's seventh busiest airport. The selected company will work on the expansion of Terminal 1 and Terminal 3 and the construction of a new runway and taxiways. Roads leading to the airport will be widened and new approach roads will be built.

The operator expects the expansion, which will start with Terminal 1, to be completed by 2021 — taking the overall handling capacity of the airport to 85 million passengers per year from the current 70 million. It will be followed by Phase 2 of the expansion, which includes construction of another brand new terminal.

Data released last year by Airports Council International showed that the passenger traffic at the Delhi Airport grew 14.1% year on year to 63.45 million in 2017. It was the first time it breached the 60-million passenger mark. In 2018, it was just below 70-million mark.

The new air traffic control (ATC) tower, which will open in 2019, and the fourth runway, to be launched in 2021, would help it reduce air congestion and handle more flights.

“Terminal 1 handles domestic traffic for low-cost carriers. These have registered a phenomenal growth in the last few years, calling for an expansion of the terminal. Delhi Metro under its Phase 3 programme is connecting this terminal to catchment areas of central and south Delhi. Since T1 is operating beyond its capacity, the expansion will begin from there and cover the airside, terminal building and city side,” said a DIAL official.

According to the Master Plan, T1's capacity will increase from 20 million to 40 million and that of Terminal 3 from 34 million to 45 million.

Inter-terminal connectivity through the Airport Metro between T1 and T3 is also part of the expansion plan.

DIAL has appointed AECOM, a design and development consultant for infrastructure projects, to complete the preliminary design for the expansion work.

SubQuestion No : 175

Q.1  
75 Which of the following measures will help the airport reduce air congestion and handle more flights for the time being?

- Ans
- 1. construction of a brand new terminal
  - 2. construction of air control tower and a new runway
  - 3. building Inter-terminal connectivity between T1 and T3
  - 4. construction of taxiways and widening of approach roads

Question ID : 98958010540

Status : Answered

Chosen Option : 2

Comprehension:

KD JOB UPDATES



Read the following passage and answer the questions given after it.

The much-awaited expansion of Delhi's Indira Gandhi International Airport is expected to begin by March-end as the airport operator has received three bids for the R 9,000-crore project, two officials familiar with the matter said.

Two bids are from foreign companies while one is from an Indian firm. The airport operator, the GMR Group-led Delhi International Airport Ltd (DIAL), is expected to finalise the bidder this week. After the announcement, the successful bidder is expected to take around two months to mobilise the workforce and begin expansion work.

The bid document says the selected company has to complete work in 42 months. All the three bidders are reported to have quoted 39 months, the sources said.

The expansion is aimed to meet the rapid traffic growth that has already made IGI Asia's seventh busiest airport. The selected company will work on the expansion of Terminal 1 and Terminal 3 and the construction of a new runway and taxiways. Roads leading to the airport will be widened and new approach roads will be built.

The operator expects the expansion, which will start with Terminal 1, to be completed by 2021 — taking the overall handling capacity of the airport to 85 million passengers per year from the current 70 million. It will be followed by Phase 2 of the expansion, which includes construction of another brand new terminal.

Data released last year by Airports Council International showed that the passenger traffic at the Delhi Airport grew 14.1% year on year to 63.45 million in 2017. It was the first time it breached the 60-million passenger mark. In 2018, it was just below 70-million mark.

The new air traffic control (ATC) tower, which will open in 2019, and the fourth runway, to be launched in 2021, would help it reduce air congestion and handle more flights.

“Terminal 1 handles domestic traffic for low-cost carriers. These have registered a phenomenal growth in the last few years, calling for an expansion of the terminal. Delhi Metro under its Phase 3 programme is connecting this terminal to catchment areas of central and south Delhi. Since T1 is operating beyond its capacity, the expansion will begin from there and cover the airside, terminal building and city side,” said a DIAL official.

According to the Master Plan, T1's capacity will increase from 20 million to 40 million and that of Terminal 3 from 34 million to 45 million.

Inter-terminal connectivity through the Airport Metro between T1 and T3 is also part of the expansion plan.

DIAL has appointed AECOM, a design and development consultant for infrastructure projects, to complete the preliminary design for the expansion work.



SubQuestion No : 176

Q.1  
76 Which agency has been appointed to prepare the design for the expansion of the Delhi airport?

- Ans
- 1. AECOM
  - 2. G M R group
  - 3. DIAL
  - 4. Airports Council International

Question ID : 98958010541  
Status : Answered  
Chosen Option : 3

Q.1  
77 Select the most appropriate word for the given group of words.

a small group of people having control of a country

- Ans
- 1. theocracy
  - 2. plutocracy
  - 3. oligarchy
  - 4. aristocracy

Question ID : 98958010529  
Status : Answered  
Chosen Option : 3

Q.1  
78 Select the antonym of the given word.

COHERENT

- Ans
- 1. constant
  - 2. consistent
  - 3. illogical
  - 4. illegible

Question ID : 98958010517  
Status : Not Answered  
Chosen Option : --

Q.1  
79 Select the synonym of the given word.

VELOCITY

- Ans
- 1. flight

- 2. speed
- 3. race
- 4. hurry

Question ID : 98958010511  
Status : Answered  
Chosen Option : 2

Q.1  
80 Select the synonym of the given word.

IMMERSE

- Ans
- 1. shower
  - 2. submerge
  - 3. bathe
  - 4. drown

Question ID : 98958010513  
Status : Answered  
Chosen Option : 2

Q.1  
81 Select the most appropriate option to substitute the underlined segment in the given sentence. If there is no need to substitute it, Select No improvement.

It is difficult to distinguish in the two brothers.

- Ans
- 1. among the two brothers.
  - 2. in both the two brothers.
  - 3. No improvement
  - 4. between the two brothers.

Question ID : 98958010495  
Status : Answered  
Chosen Option : 4

Q.1  
82 Select the most appropriate meaning of the given idiom.

hit the nail on the head

- Ans
- 1. to assess the situation immediately
  - 2. to make the precisely correct point
  - 3. to hit someone on the head
  - 4. to handle a difficult situation

Question ID : 98958010523  
Status : Answered  
Chosen Option : 2

Q.1  
83 Select the most appropriate meaning of the given idiom.

get out of hand

- Ans
- 1. to act irresponsibly
  - 2. to become uncontrollable
  - 3. to lose courage
  - 4. to be indecisive

Question ID : 98958010522  
Status : Answered  
Chosen Option : 2

Q.1  
84 In the sentence identify the segment which contains the grammatical error.

Either Avika or Nikunj are going to win the prize in the handwriting competition.

- Ans
- 1. or Nikunj
  - 2. are going to
  - 3. Either Avika
  - 4. in the

Question ID : 98958010493  
Status : Answered  
Chosen Option : 4

Q.1  
85 In the sentence identify the segment which contains the grammatical error.

This test comprises of grammar, vocabulary and reading comprehension.

- Ans
- 1. comprises of
  - 2. grammar, vocabulary
  - 3. and reading comprehension
  - 4. This test

Question ID : 98958010492  
Status : Answered  
Chosen Option : 1

Q.1  
86 Select the most appropriate word to fill in the blank.

I felt something hard \_\_\_\_\_ my cheek.

Ans

- 1. to hitting
- 2. to hit
- 3. to be hitting
- 4. hit

Question ID : 98958010504  
Status : Answered  
Chosen Option : 3

Q.1  
87 Select the synonym of the given word.

AWKWARD

- Ans
- 1. graceful
  - 2. clumsy
  - 3. pleasant
  - 4. skillful

Question ID : 98958010514  
Status : Answered  
Chosen Option : 2

Q.1  
88 Select the antonym of the given word.

STINGY

- Ans
- 1. miserly
  - 2. kind
  - 3. generous
  - 4. mean

Question ID : 98958010519  
Status : Answered  
Chosen Option : 2

Q.1  
89 Select the antonym of the given word.

WEARY

- Ans
- 1. quick
  - 2. refreshed
  - 3. alert
  - 4. tired

Question ID : 98958010516  
Status : Answered  
Chosen Option : 2

Q.1  
90 Select the wrongly spelt word.

- Ans
- 1. deveous
  - 2. devilish
  - 3. device
  - 4. deviation

Question ID : 98958010531  
Status : Answered  
Chosen Option : 1

Q.1  
91 Select the most appropriate word for the given group of words.

things or people of the same kind

- Ans
- 1. contemporaries
  - 2. homogeneous
  - 3. colleagues
  - 4. fellows

Question ID : 98958010528  
Status : Answered  
Chosen Option : 1

Q.1  
92 Select the most appropriate word for the given group of words.

instrument used for coding and decoding messages

- Ans
- 1. cryptograph
  - 2. cardiograph
  - 3. crescograph
  - 4. chronometer

Question ID : 98958010530  
Status : Answered  
Chosen Option : 1

Q.1  
93 Select the wrongly spelt word.

- Ans
- 1. recruit
  - 2. realm
  - 3. receipt



✓ 4. relieve

Question ID : 98958010533  
Status : Answered  
Chosen Option : 4

Q.1  
94 Select the most appropriate word for the given group of words.

the base frame of a car or other wheeled vehicle

- Ans
- 1. bonnet
  - 2. chassis
  - 3. fuselage
  - 4. cockpit

Question ID : 98958010527  
Status : Answered  
Chosen Option : 1

Q.1  
95 Select the most appropriate meaning of the given idiom.

to give the slip

- Ans
- 1. to hide
  - 2. to hit someone
  - 3. to escape
  - 4. to keep low

Question ID : 98958010521  
Status : Answered  
Chosen Option : 3

Q.1  
96 Select the most appropriate meaning of the given idiom.

to drive someone up the wall

- Ans
- 1. to help someone in difficulty
  - 2. to frighten someone
  - 3. to irritate someone very much
  - 4. to keep at a distance

Question ID : 98958010525  
Status : Answered  
Chosen Option : 1

Q.1  
97

Select the most appropriate option to substitute the underlined segment in the given sentence. If there is no need to substitute it, Select No improvement.

People arrive from all parts of the country and had walked miles to take a dip at the confluence of the Rivers Ganga and Yamuna.

- Ans
- 1. are walking miles to take a dip
  - 2. walk for miles to take a dip
  - 3. had walked miles taking a dip
  - 4. No improvement

Question ID : 98958010498

Status : Answered

Chosen Option : 2

Q.1  
98 In the sentence identify the segment which contains the grammatical error.

She is always finding fault with the food I cook.

- Ans
- 1. is always finding
  - 2. I cook.
  - 3. the food
  - 4. fault with

Question ID : 98958010494

Status : Answered

Chosen Option : 1

Q.1  
99 Select the wrongly spelt word.

- Ans
- 1. establish
  - 2. essential
  - 3. evaluetion
  - 4. evaporation

Question ID : 98958010532

Status : Answered

Chosen Option : 3

Q.2  
00 Select the synonym of the given word.

ACCURATE

- Ans
- 1. pacify
  - 2. condensed
  - 3. precise
  - 4. truthful

Question ID : 98958010512

Status : Answered

Chosen Option : 3

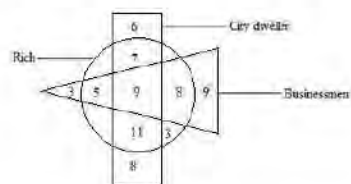
KD JOB UPDATES

## Recruitment of Sub-Inspector in Delhi Police, CAPFs and Assistant Sub-Inspector in CISF Examination, 2018

Roll No. :	
Registration No.	
Name :	
Exam Venue :	Gyanada Institute Of Computer Training
Exam Time :	3:00 PM - 5:00 PM
Exam Date :	13/03/2019

Section: SI CPD

**Q.1** In the following diagram, the triangle represents 'businessmen', the circle represents 'rich' and the rectangle represents 'city dwellers'. The numbers in different segments show the number of persons.



How many rich city dwellers are not businessmen?

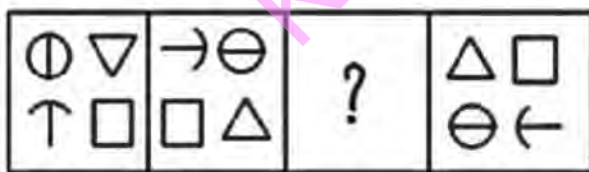
- Ans**
- 1. 14
  - 2. 18
  - 3. 20
  - 4. 16

Question ID : 98958012406

Status : Answered

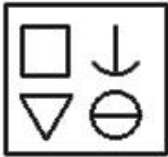
Chosen Option : 2

**Q.2** Identify the missing figure in the following series.

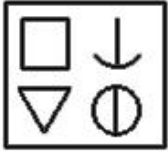


- Ans**
- 1.
  - 2.

✗ 3.



✓ 4.



Question ID : 98958012395

Status : Answered

Chosen Option : 4

Q.3 Select the word-pair in which the two words are related in the same way as are the two words in the given word-pair.

Dress : Stitch

Ans

✗ 1. Drive : Road

✗ 2. Water : Swim

✗ 3. Liquid : Measure

✓ 4. Dish : Cook

Question ID : 98958012368

Status : Answered

Chosen Option : 4

Q.4 Which number will replace the question mark (?) in the following series?

5, 7, 11, 14, 23, ?, 43, 48

Ans

✓ 1. 27

✗ 2. 39

✗ 3. 31

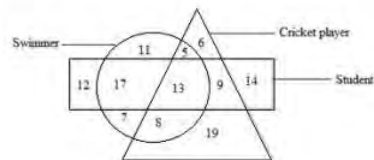
✗ 4. 26

Question ID : 98958012380

Status : Answered

Chosen Option : 1

Q.5 In the following diagram, the triangle represents 'cricket players', the circle represents 'swimmers' and the rectangle represents 'students'. The numbers in different segments show the number of persons.



How many students are swimmers but not cricket players?

Ans

✗ 1. 18

✓ 2. 17



3. 8

4. 13

Question ID : 98958012405

Status : Answered

Chosen Option : 2

Q.6 Which number will replace the question mark (?) in the following series?

3, 5, 10, 18, 29, ?, 60

Ans  1. 43

2. 46

3. 45

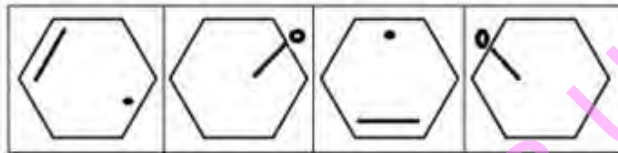
4. 37

Question ID : 98958012379

Status : Answered

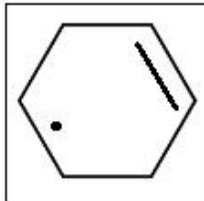
Chosen Option : 1

Q.7 Select the figure that will come next in the following series.

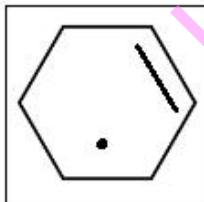


Ans

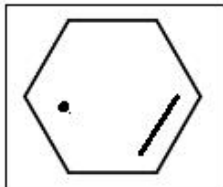
1.



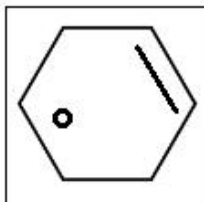
2.



3.



4.



Question ID : 98958012393

Status : Answered

Chosen Option : 1

**Q.8** Two statements are given, followed by three conclusions numbered I, II and III. Assuming the statements to be true, even if they seem to be at variance with commonly known facts, decide which of the conclusions logically follow(s) from the statements.

**Statements:**

Some animals are mammals.

No mammal is herbivore.

**Conclusions:**

- I. No herbivore is mammal.
- II. Some mammals are animals.
- I. No animal is herbivore.

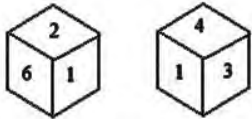
- Ans  1. None of the conclusions follows.
2. Only conclusions I and II follow.
3. Only conclusions II and III follow.
4. Only conclusions I and III follow.

Question ID : 98958012377

Status : Answered

Chosen Option : 2

**Q.9** Two positions of the same dice are given. Which number will be at the top if '6' is at the bottom?



- Ans  1. 1
2. 5
3. 3
4. 4

Question ID : 98958012397

Status : Answered

Chosen Option : 4

**Q.1** Three of the following four letter-clusters are alike in a certain way and one is different. Find the odd one out.

- Ans  1. WUTR
2. SQOM
3. JMPS
4. GHIJ

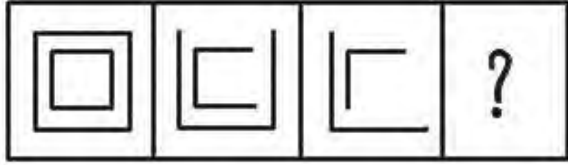
Question ID : 98958012362

Status : Answered

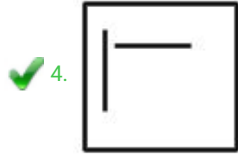
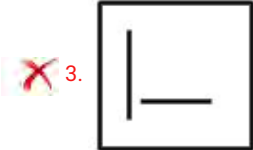
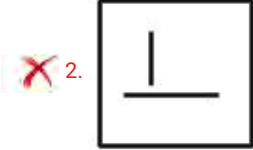
Chosen Option : 4

Q.1  
1

Identify the missing figure in the following series.



Ans



Question ID : 98958012394

Status : Answered

Chosen Option : 4

Q.1 निम्नलिखित चार शब्दों में से तीन शब्द किसी विशिष्ट संबन्ध में एक दूसरे के समान हैं और इनमें से एक असमान है। असमान विकल्प का चयन कीजिए।

- Ans
- 1. थकान
  - 2. चिंता
  - 3. तनाव
  - 4. ध्यान

Question ID : 98958012364

Status : Answered

Chosen Option : 4

Q.1 'Experiment' is related to 'Invention' in the same way as 'Read' is related to '\_\_\_\_\_'.  
3

- Ans
- 1. Evaluation
  - 2. Learn
  - 3. Concentration
  - 4. Invention

Question ID : 98958012367

Q.1  
4 Which two signs should be interchanged to make the given equation correct?

$$9 + 12 \div 6 \times 8 - 4 = 14$$

- Ans
- 1. - and  $\times$
  - 2.  $\div$  and +
  - 3.  $\times$  and  $\div$
  - 4. + and  $\times$

Question ID : 98958012390  
Status : Answered  
Chosen Option : 3

Q.1  
5 Select the option that is related to the third term in the same way as the second term is related to the first term.

ACFJ : ZXUQ :: ELHK : \_\_\_\_\_

- Ans
- 1. VOSP
  - 2. VUSP
  - 3. WOSP
  - 4. WRSQ

Question ID : 98958012371  
Status : Answered  
Chosen Option : 1

Q.1  
6 Select the correct mirror image of the given figure when the mirror is placed on the right of the figure.



- Ans
- 1.
  - 2.
  - 3.

✓ 4.

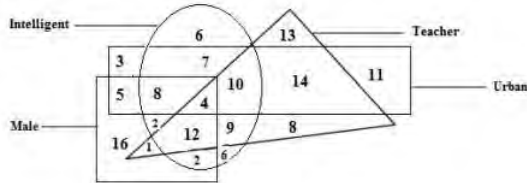


Question ID : 98958012400

Status : Answered

Chosen Option : 4

Q.1 In the following diagram, the triangle represents 'teachers', the circle represents 'intelligent', the rectangle represents 'urban' and the square represents 'males'. The numbers in different segments show the number of persons.



How many urban intelligent teachers are not male?

- Ans
- 1. 4
  - 2. 12
  - 3. 14
  - 4. 10

Question ID : 98958012407

Status : Answered

Chosen Option : 4

Q.1 Swati's school bus starts from her house and takes one left turn to reach the hospital. Then, it takes a right turn and covers 5 km. Finally, it takes a left turn to reach her school. On reaching the school, the bus faces south-west. In which direction was the bus facing when it left Swati's house?

- Ans
- 1. North-east
  - 2. East
  - 3. North-west
  - 4. South-east

Question ID : 98958012403

Status : Answered

Chosen Option : 3

Q.1 Select the option that is related to the third term in the same way as the second term is related to the first term.

9

HJLN : ILOR :: DFHJ : \_\_\_\_\_

- Ans
- 1. EHLO
  - 2. EHKN
  - 3. EHJL
  - 4. CGJM

Question ID : 98958012370

Status : Answered

Chosen Option : 2

Q.2 Three of the following four number-pairs are alike in a certain way and one is different. Find the odd one out.

0

- Ans
- 1. 19 : 40
  - 2. 21 : 45
  - 3. 14 : 30
  - 4. 9 : 20

Question ID : 98958012384

Status : Answered

Chosen Option : 2

Q.2 Which of the following interchanges of signs and numbers would make the flowing equation correct?

1

$$18 - 8 \div 12 \times 6 + 10 = 12$$

- Ans
- 1.  $\times$  and  $\div$ , 12 and 6
  - 2.  $+$  and  $-$ , 8 and 10
  - 3.  $\times$  and  $-$ , 18 and 6
  - 4.  $+$  and  $-$ , 6 and 8

Question ID : 98958012392

Status : Answered

Chosen Option : 4

Q.2 Select the correct alternative to indicate the arrangement of the following words in a logical and meaningful order.

2

1. Judgment
2. Arrest
3. Prison
4. Court
5. Crime
6. Punishment

- Ans
- 1. 3, 6, 4, 1, 2, 5
  - 2. 5, 2, 3, 4, 1, 6
  - 3. 5, 4, 2, 1, 6, 3
  - 4. 5, 2, 4, 1, 6, 3

Question ID : 98958012361

Status : Answered

Chosen Option : 2

Q.2 Which letter will replace the question mark (?) in the following series?

3

J, Q, L, O, N, ?, P, K

- Ans
- 1. K
  - 2. M
  - 3. I
  - 4. L



Question ID : 98958012358

Status : Answered

Chosen Option : 2

Q.2  
4 Select the set of numbers that is similar to the following set.

{5, 10, 17}

Ans  1. {37, 50, 65}

2. {26, 50, 65}

3. {24, 35, 48}

4. {17, 35, 72}

Question ID : 98958012389

Status : Answered

Chosen Option : 1

Q.2  
5 If DRIVE is coded as 59372 and SPUR is coded as 6489, what will be the code for PRIDE?

Ans  1. 94532

2. 49352

3. 43925

4. 49235

Question ID : 98958012374

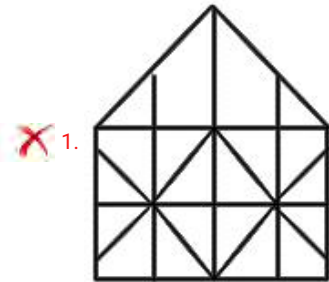
Status : Answered

Chosen Option : 2

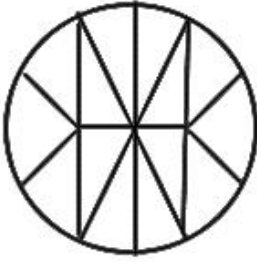
Q.2  
6 Select the option in which the given figure is embedded.



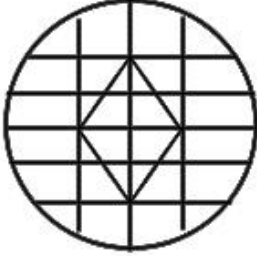
Ans



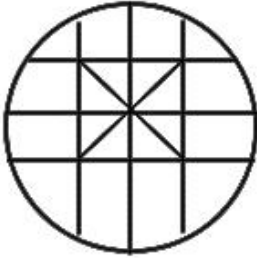
2.



3.



4.



Question ID : 98958012398

Status : Answered

Chosen Option : 3

Q.2 निम्नलिखित चार शब्दों में से तीन शब्द किसी विशिष्ट सन्दर्भ में एक दूसरे के समान हैं और इनमें से एक असमान है। असमान विकल्प का चयन कीजिए।

Ans

1. विदाई

2. निष्कर्ष

3. समाप्ति

4. मध्यांतर

Question ID : 98958012365

Status : Answered

Chosen Option : 4

Q.2 Three of the following four letter-clusters are alike in a certain way and one is different. Find the odd one out.

Ans

1. GPJM

2. RXTV

3. NEHK

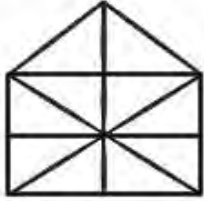
4. MSOQ

Question ID : 98958012363

Status : Answered

Chosen Option : 3

Q.2  
9 How many triangles are there in the following figure?



- Ans
- 1. 23
  - 2. 21
  - 3. 14
  - 4. 19

Question ID : 98958012396

Status : Answered

Chosen Option : 2

Q.3  
0 Rinky walked 70 m towards the east from her house, and then took a right turn and walked 50 m to reach the post office. From there, she took a right turn again and walked 150 m to reach the market, from where she took a left turn and walked a few meters to reach the school. If the air distance between Rinky's house and the school is 170 m, what is the air distance between the market and the school?

- Ans
- 1. 90 m
  - 2. 70 m
  - 3. 100 m
  - 4. 120 m

Question ID : 98958012404

Status : Not Answered

Chosen Option : --

Q.3  
1 Which letter-cluster will replace the question mark (?) in the following series?

HKNQ, JIPO, KHQN, MFSL, ?

- Ans
- 1. ODUJ
  - 2. NEKT
  - 3. NETK
  - 4. NGRM

Question ID : 98958012359

Status : Answered

Chosen Option : 3

Q.3  
2 Select the correct mirror image of the given figure when the mirror is placed on the right of the figure.



Ans



Question ID : 98958012401

Status : Answered

Chosen Option : 4

Q.3 Select the option that is related to the third number in the same way as the second number is related to the first number.

3

9 : 19 :: 29 : \_\_\_\_\_

- Ans
- 1. 39
  - 2. 69
  - 3. 59
  - 4. 49

Question ID : 98958012381

Status : Answered

Chosen Option : 3

Q.3 Which number will replace the question mark (?) in the following series?

4

7, 9, 13, 15, ?, 21, 25

- Ans
- 1. 20
  - 2. 19
  - 3. 17
  - 4. 18

Question ID : 98958012378

Status : Answered

Chosen Option : 2

Q.3 उस विकल्प का चयन कीजिए जिसके शब्द-युग्म के बीच वही सम्बन्ध है जो संबंध निम्नलिखित शब्द-युग्म के बीच है।

5

शब्द : अक्षर

- Ans  1. मकान : भवन  
 2. पिता : पुत्र  
 3. चिकित्सक : दवाई  
 4. विद्यालय : कक्षा

Question ID : 98958012369  
Status : Answered  
Chosen Option : 4

Q.3 Select the option that is related to the third number in the same way as the second number is related to the first number.  
6

9 : 21 :: 27 : \_\_\_\_\_

- Ans  1. 72  
 2. 51  
 3. 63  
 4. 49

Question ID : 98958012382  
Status : Answered  
Chosen Option : 3

Q.3 Select the number-pair in which the two numbers are related in the same way as are the two numbers of the given number pair.  
7

1 : 8

- Ans  1. 16 : 49  
 2. 6 : 30  
 3. 8 : 27  
 4. 9 : 36

Question ID : 98958012383  
Status : Answered  
Chosen Option : 3

Q.3 Select the correct alternative to indicate the arrangement of the following words in a logical and meaningful order.  
8

1. Fruit
2. Harvest
3. Seed
4. Sell
5. Plant

- Ans  1. 3, 5, 1, 2, 4  
 2. 4, 2, 1, 3, 5  
 3. 1, 3, 5, 2, 4  
 4. 3, 1, 5, 2, 4

Question ID : 98958012360  
Status : Answered  
Chosen Option : 1

Q.3

9 Three of the following four number-pairs are alike in a certain way and one is different. Find the odd one out.

- Ans  1. 45 : 55  
 2. 35 : 42  
 3. 25 : 30  
 4. 15 : 18

Question ID : 98958012385  
Status : Answered  
Chosen Option : 1

Q.4  
0 Select the set of numbers that is similar to the following set.

{8, 19, 30}

- Ans  1. {6, 21, 32}  
 2. {12, 25, 38}  
 3. {9, 20, 35}  
 4. {11, 24, 38}

Question ID : 98958012388  
Status : Answered  
Chosen Option : 1

Q.4  
1 जिस प्रकार 'थका' का संबंध 'थका हुआ' से है उसी प्रकार 'दुःखि' का संबंध '\_\_\_\_\_ ' से है।

- Ans  1. भावुक  
 2. अफसोस  
 3. गंभीर  
 4. उदास

Question ID : 98958012366  
Status : Answered  
Chosen Option : 4

Q.4  
2 Which two numbers should be interchanged to make the following equation correct?

$$8 + 12 \div 9 \times 6 - 4 = 12 \div 6 \times 8 + 9 - 1$$

- Ans  1. 6 and 9  
 2. 8 and 4  
 3. 12 and 8  
 4. 6 and 12

Question ID : 98958012391  
Status : Not Answered  
Chosen Option : --

Q.4 In a code language, PENCIL is written as PNEICL. How will MOTHER be written as in that language?



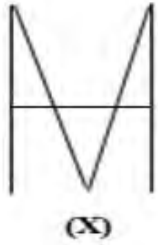
3

- Ans  1. MTOEHR  
 2. OMHTRE  
 3. MTOREH  
 4. MHTORE

Question ID : 98958012372  
Status : Answered  
Chosen Option : 1

Q.4 Select the option in which the given figure is embedded.

4



Ans

- 1.
- 2.
- 3.
- 4.

Question ID : 98958012399  
Status : Answered  
Chosen Option : 3

Q.4 In a code language, EXPLAIN is written as XEALPNI. How will FACTORY be written in that language?

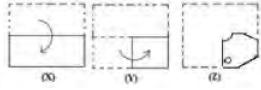
5

- Ans  1. AFTOCYR

- 2. AFTCROY
- 3. CAFOTYR
- 4. AFOTCYR

Question ID : 98958012373  
 Status : Answered  
 Chosen Option : 4

Q.4 The sequence of folding a piece of square paper and the manner in which the folded paper has been cut is shown in the figures X, Y and Z. How would this paper look when unfolded?



Ans

- 1.
- 2.
- 3.
- 4.

KD JOB UPDATES

Question ID : 98958012402  
 Status : Answered  
 Chosen Option : 3

Q.4 If FATHER = 7 and DAUGHTER = 9, then DISTANT = \_\_\_\_\_.

- 1. 6
- 2. 8
- 3. 7
- 4. 10

Question ID : 98958012375  
 Status : Answered  
 Chosen Option : 2

Q.4 Three of the following four number-pairs are alike in a certain way and one is different. Find the odd one out.

- 1. 30 : 40

- 2. 42 : 56
- 3. 20 : 30
- 4. 12 : 20

Question ID : 98958012387  
Status : Not Answered  
Chosen Option : --

**Q.4** Two statements are given, followed by three conclusions numbered I, II and III. Assuming the statements to be true, even if they seem to be at variance with commonly known facts, decide which of the conclusions logically follow(s) from the statements.

9

**Statements:**

Some males are swimmers.  
All swimmers are athletes.

**Conclusions:**

- I. Some athletes are males.
- II. No athlete is male.
- I. Some athletes are swimmers.

**Ans**  1. Only conclusions I and III follow.

- 2. Only conclusions II and III follow.
- 3. All of the conclusions follow.
- 4. Only conclusions I and II follow.

Question ID : 98958012376  
Status : Answered  
Chosen Option : 1

**Q.5** Three of the following four number-pairs are alike in a certain way and one is different. Find the odd one out.

0

- Ans**
- 1. 975 : 753
  - 2. 697 : 475
  - 3. 456 : 234
  - 4. 739 : 527

Question ID : 98958012386  
Status : Answered  
Chosen Option : 4

**Q.5** In January 2019, US-based Indian poet \_\_\_\_\_ received the 'Woman's Voice Award' at the Apeejay Kolkata Literary Festival (AKLF) 2019.

1

- Ans**
- 1. Ranjani Murali
  - 2. Meena Alexander
  - 3. Sujata Bhatt
  - 4. Smita Agarwal

Question ID : 98958010804  
Status : Not Answered  
Chosen Option : --

**Q.5** Passer Domesticus is commonly known as \_\_\_\_\_.

2

- Ans
- 1. Pigeon
  - 2. Parrot
  - 3. Lark
  - 4. Sparrow

Question ID : 98958010835  
Status : Not Answered  
Chosen Option : --

Q.5 The expansion project of Numaligarh Refinery involves setting up a crude oil pipeline from \_\_\_\_\_ to Numaligarh.

- 3
- Ans
- 1. Paradip
  - 2. Banauni
  - 3. Bina
  - 4. Halida

Question ID : 98958010802  
Status : Not Answered  
Chosen Option : --

Q.5 The Gurmukhi script was created in the 16th century CE by the second Sikh guru \_\_\_\_\_.

- 4
- Ans
- 1. Guru Angad
  - 2. Guru Amar Das
  - 3. Guru Ram Das
  - 4. Guru Arjan

Question ID : 98958010812  
Status : Not Answered  
Chosen Option : --

Q.5 Weightlifter \_\_\_\_\_ won India's maiden gold medal at 2018 Youth Olympic Games in the men's 62 kg category in Argentina.

- 5
- Ans
- 1. Jitu Rai
  - 2. Santosh Yadav
  - 3. Sanjita Chanu
  - 4. Jeremy Lalrinnunga

Question ID : 98958010825  
Status : Not Answered  
Chosen Option : --

Q.5 As of January 2019, the number of high courts in India is \_\_\_\_\_.

- 6
- Ans
- 1. 20
  - 2. 18
  - 3. 30

✓ 4. 25

Question ID : 98958010839  
Status : Not Answered  
Chosen Option : --

Q.5 The tennis pair of \_\_\_\_\_ won a gold medal in the Men's Doubles tennis event at the 2018 Asian Games.  
7

- Ans
- 1. Aleksandr Bublik and Denis Yevseyev
  - 2. Mahesh Bhupathi and Leander Paes
  - 3. Rohan Bopanna and Divij Sharan
  - 4. Yuki Bhambri and Ramanathan Krishnan

Question ID : 98958010827  
Status : Answered  
Chosen Option : 1

Q.5 \_\_\_\_\_ is an inherited blood disorder due to which people suffering from this condition are unable to make  
8 haemoglobin.

- Ans
- 1. Thrombosis
  - 2. Thalassemia
  - 3. Bone Marrow failure
  - 4. Stroke

Question ID : 98958010808  
Status : Answered  
Chosen Option : 2

Q.5 In January 2019, Union Minister of Petroleum and Natural Gas \_\_\_\_\_ flagged off Sanrakshan Kshmatra Mahotsav  
9 (SAKSHAM) vans.

- Ans
- 1. Nitin Jairam Gadkari
  - 2. DV Sadananda Gowda
  - 3. Suresh Prabhu
  - 4. Dharmendra Pradhan

Question ID : 98958010824  
Status : Not Answered  
Chosen Option : --

Q.6 In November 2018, \_\_\_\_\_ electronics company CASIO launched the world's first Goods and Services Tax (GST)  
0 calculator in India.

- Ans
- 1. US
  - 2. Chinese
  - 3. UK
  - 4. Japanese

Question ID : 98958010811  
Status : Not Answered  
Chosen Option : --

Q.6 1 Which Schedule of the Indian Constitution deals with the disqualification of elected members on the ground of defection?

- Ans
- 1. Ninth
  - 2. Eleventh
  - 3. Twelfth
  - 4. Tenth

Question ID : 98958010809  
Status : Not Answered  
Chosen Option : --

Q.6 2 In January 2018, renowned scientist, \_\_\_\_\_ took charge as the Director of Vikram Sarabhai Space Centre (VSSC).

- Ans
- 1. S. Somanath
  - 2. Salim Ali
  - 3. C. N .R Rao
  - 4. Jayant Narlikar

Question ID : 98958010806  
Status : Not Answered  
Chosen Option : --

Q.6 3 Which of the following gases turn lime water milky?

- Ans
- 1. Nitrogen
  - 2. Carbon Dioxide
  - 3. Oxygen
  - 4. Hydrogen

Question ID : 98958010822  
Status : Answered  
Chosen Option : 2

Q.6 4 In August 2018, India rejected Pakistan's objections on its two hydropower projects, Pakal Dul and Lower Kalnai on the \_\_\_\_\_ river.

- Ans
- 1. Yamuna
  - 2. Brahmaputra
  - 3. Kaveri
  - 4. Chenab

Question ID : 98958010833  
Status : Answered  
Chosen Option : 4

Q.6 5 'Sakhi centre' or 'One Stop Centre (OSC)' is a fully sponsored scheme of the Central Government under the Ministry of \_\_\_\_\_.

- Ans
- 1. Women and Child Development
  - 2. Housing and Urban Affairs



3. Law and Justice

4. Culture

Question ID : 98958010799  
Status : Not Answered  
Chosen Option : --

Q.6  
6 Who wrote the book "Gulamgiri"?

Ans  1. Swami Vivekanand

2. Vinoba Bhave

3. Swami Dayanand Saraswati

4. Jyotiba Phule

Question ID : 98958010819  
Status : Not Answered  
Chosen Option : --

Q.6  
7 The construction work of the ₹ 500-crore Pagladiya Multipurpose Dam project in Nalbari district of \_\_\_\_\_ will begin from February 2019.

Ans  1. Assam

2. Meghalaya

3. Tripura

4. Telangana

Question ID : 98958010816  
Status : Not Answered  
Chosen Option : --

Q.6  
8 Garo Hills lie in \_\_\_\_\_ state.

Ans  1. Assam

2. Nagaland

3. Meghalaya

4. Manipur

Question ID : 98958010830  
Status : Answered  
Chosen Option : 3

Q.6  
9 Which is the smallest bone in the human body?

Ans  1. Stapes

2. Malleus

3. Incus

4. Metacarsal

Question ID : 98958010821

Status : **Answered**  
Chosen Option : 1

Q.7  
0 In January 2019, the World Health Organisation released its list of 10 global health threats which demand immediate attention. Which of the following is NOT one of them?

- Ans
- 1. HIV
  - 2. Antimicrobial resistance
  - 3. Dengue
  - 4. Communicable diseases

Question ID : **98958010831**  
Status : **Not Answered**  
Chosen Option : --

Q.7  
1 The Second Battle of Tarain was fought in the year \_\_\_\_\_.

- Ans
- 1. 1345 AD
  - 2. 1294 AD
  - 3. 1192 AD
  - 4. 1079 AD

Question ID : **98958010832**  
Status : **Not Answered**  
Chosen Option : --

Q.7  
2 Which of the following elements/chemical compounds has the highest density?

- Ans
- 1. Zinc
  - 2. Mercury
  - 3. Nickel
  - 4. Osmium

Question ID : **98958010796**  
Status : **Answered**  
Chosen Option : 4

Q.7  
3 In January 2019, President Ramnath Kovind gave his assent to the 124th constitutional Amendment Bill (which is now the 103rd Amendment Act of the Constitution of India) providing \_\_\_\_\_ reservation for economically weaker sections from the upper castes.

- Ans
- 1. 10%
  - 2. 5%
  - 3. 15%
  - 4. 20%

Question ID : **98958010797**  
Status : **Answered**  
Chosen Option : 1

Q.7  
4 The book 'Ammachi's Amazing Machines' by \_\_\_\_\_ won 'The Hindu Young World-Goodbooks Award' 2018 in the 'Best Picture Book: Illustration' category at the event.

Ans

- 1. Mamta Nainy
- 2. Rajiv Elipe
- 3. Venita Coelho
- 4. Vinayak Verma

Question ID : 98958010794  
Status : Not Answered  
Chosen Option : --

Q.7  
5 The power of a lens is measured in \_\_\_\_\_.

- Ans
- 1. Candela
  - 2. Kelvin
  - 3. Ampere
  - 4. Diopter

Question ID : 98958010817  
Status : Answered  
Chosen Option : 4

Q.7  
6 Karma is a dance form from which of the following states?

- Ans
- 1. Maharashtra
  - 2. Rajasthan
  - 3. Jharkhand
  - 4. Gujarat

Question ID : 98958010834  
Status : Answered  
Chosen Option : 3

Q.7  
7 Who started the Asiatic Society of Bengal in 1784?

- Ans
- 1. William Carey
  - 2. William Wordsworth
  - 3. William Jones
  - 4. William Adam

Question ID : 98958010829  
Status : Not Answered  
Chosen Option : --

Q.7  
8 The first India-ASEAN InnoTech Summit was held in \_\_\_\_\_ in November 2018.

- Ans
- 1. Chennai
  - 2. New Delhi
  - 3. Mumbai

4. Ahmedabad

Question ID : 98958010810  
Status : Not Answered  
Chosen Option : --

Q.7  
9 In January 2019, the Reserve Bank of India initiated two surveys namely, Industrial Outlook Survey (IOS) and \_\_\_\_\_.

- Ans
- 1. Services Outlook Survey (SOS)
  - 2. Services and Trade Outlook Survey (STOS)
  - 3. Services and Infrastructure Outlook Survey (SIOS)
  - 4. Services Trade Survey (STS)

Question ID : 98958010814  
Status : Not Answered  
Chosen Option : --

Q.8  
0 Banabhatta was the court poet of which of the following Indian kings?

- Ans
- 1. Yasovarman
  - 2. Chandra gupta II
  - 3. Harshavardhana
  - 4. Pulkesin II

Question ID : 98958010836  
Status : Answered  
Chosen Option : 2

Q.8  
1 In which year did Independent India win its first Olympic gold medal?

- Ans
- 1. 1960
  - 2. 1972
  - 3. 2008
  - 4. 1948

Question ID : 98958010815  
Status : Answered  
Chosen Option : 4

Q.8  
2 In June 2017, NASA successfully launched \_\_\_\_\_ mission to study the interstellar medium, the matter between stars.

- Ans
- 1. BLESS
  - 2. FLESS
  - 3. HESS
  - 4. CHESS

Question ID : 98958010803  
Status : Not Answered  
Chosen Option : --

Q.8 In January 2019, Prime Minister Narendra Modi inaugurated the Kollam Bypass. Which of the following is NOT true of the bypass?

Ans  1. It lies on the National Highway-66.

2. It is 18 km long and has three lanes.

3.

It is the first National Highway project in the country taken up on a 50:50 Centre-State partnership.

4.

Its opening would considerably reduce travel time between Alappuzha and Thiruvananthapuram.

Question ID : 98958010843

Status : Not Answered

Chosen Option : --

Q.8 An exhibition \_\_\_\_\_ was held in New Delhi, in January 2019 by the Minority Affairs Ministry to project the talent of Indian artisans.

Ans  1. Aadaah

2. Threads Fashion and Lifestyle

3. Hunar Haat

4. Andaaz

Question ID : 98958010823

Status : Not Answered

Chosen Option : --

Q.8 The Drishyakala-Exhibition held at the Red Fort showcased art works from \_\_\_\_\_ till India's independence.

Ans  1. 12th century

2. 10th century

3. 11th century

4. 16th century

Question ID : 98958010838

Status : Not Answered

Chosen Option : --

Q.8 The hypothalamus, a small region of the \_\_\_\_\_ plays a crucial role in many important functions of the human body.

Ans  1. liver

2. brain

3. stomach

4. kidney

Question ID : 98958010841

Status : Answered

Chosen Option : 2

Q.8 'The Hindu Young World-Goodbooks Award'2018 in the 'Best Book: Fiction' category was given to \_\_\_\_\_ for 'Boy No. 32'.

Ans



- 1. Venita Coelho
- 2. Mamta Nainy
- 3. Rajiv Elipe
- 4. Vinayak Verma

Question ID : 98958010820  
Status : Not Answered  
Chosen Option : --

Q.8 \_\_\_\_\_ was awarded the International Gandhi Peace Award (2016) for its contribution towards the improvement of sanitation facilities in India and the emancipation of manual scavengers.

- Ans
- 1. Vivekananda Kendra
  - 2. Ekal Abhiyan Trust
  - 3. Akshaya Patra Foundation
  - 4. Sulabh International

Question ID : 98958010813  
Status : Not Answered  
Chosen Option : --

Q.8 Pune is set to become the first Indian city to have a traffic robot in 2019. Which of the following statements is NOT true about the traffic police authorities of Pune and their robot named 'Roadeo'?

- Ans
- 1. Roadeo will move around city roads, functioning as a quasi-traffic policeman and cautioning commuters.
  - 2. Roadeo has a 26-inch LCD display.
  - 3. Roadeo's hands have been engineered to move and show stop signs to vehicles
  - 4. Roadeo is equipped with a siren, skid-steering wheels and obstacle-detection sensors.

Question ID : 98958010795  
Status : Not Answered  
Chosen Option : --

Q.9 The \_\_\_\_\_ is a Jain text containing the biographies of the Jain Tirthankaras, most notably Parshvanath and Mahavira.

- Ans
- 1. Mahapurana
  - 2. Kalpa Sutra
  - 3. Adi Purana
  - 4. Uttaradhyayana

Question ID : 98958010840  
Status : Answered  
Chosen Option : 2

Q.9 \_\_\_\_\_ became the first Indian Badminton player to win the BWF World Tour Final in December 2018.

- Ans
- 1. PV Sindhu



- 2. Aparna Popat
- 3. Jwala Gutta
- 4. Saina Nehwal

Question ID : 98958010818  
Status : Not Answered  
Chosen Option : --

Q.9  
2 Manas Tiger Reserve is located in which Indian state?

- Ans
- 1. Karnataka
  - 2. Rajasthan
  - 3. Assam
  - 4. Maharashtra

Question ID : 98958010826  
Status : Answered  
Chosen Option : 3

Q.9  
3 The states of \_\_\_\_\_ celebrated their 47th Statehood Day on 21st January 2019.

- Ans
- 1. Chhattisgarh, Telangana and Tripura
  - 2. Uttarakhand, Manipur and Telangana
  - 3. Tripura, Manipur and Meghalaya
  - 4. Tripura, Assam and Telangana

Question ID : 98958010805  
Status : Answered  
Chosen Option : 3

Q.9  
4 Which of the following articles of the India Constitution deals with the Uniform Civil Code?

- Ans
- 1. Article 46
  - 2. Article 45
  - 3. Article 44
  - 4. Article 43

Question ID : 98958010842  
Status : Not Answered  
Chosen Option : --

Q.9  
5 The \_\_\_\_\_ was awarded the International Gandhi Peace Prize (2016) for its work towards providing mid-day meals to children across India.

- Ans
- 1. Vivekananda Kendra
  - 2. Ekal Abhiyan Trust
  - 3. Sulabh International
  - 4. Akshaya Patra Foundation

Question ID : 98958010800  
Status : Not Answered  
Chosen Option : --

Q.9 Shot-putter \_\_\_\_\_ won a gold medal in the men's shot put event at the 2018 Jakarta-Palembang Asian Games held in Indonesia.

- Ans
- 1. Om Prakash Singh
  - 2. Bahadur Singh Sagoo
  - 3. Tejinder Pal Singh Toor
  - 4. Inderjit Singh

Question ID : 98958010837  
Status : Not Answered  
Chosen Option : --

Q.9 The \_\_\_\_\_ dance is performed by shepherd community of Goa during Navratri.

- Ans
- 1. Kolkali
  - 2. Fugdi
  - 3. Dhangar
  - 4. Lava

Question ID : 98958010798  
Status : Not Answered  
Chosen Option : --

Q.9 Sanrakshan Kshмата Mahotsav (SAKSHAM) falls under the aegis of the \_\_\_\_\_ Government of India.

- Ans
- 1. Ministry of Petroleum & Natural Gas
  - 2. Ministry of External Affairs
  - 3. Ministry of Chemicals and Fertilizers
  - 4. Ministry of Finance

Question ID : 98958010801  
Status : Answered  
Chosen Option : 1

Q.9 DNA was first isolated, analysed and recognised as a unique macro-molecule by \_\_\_\_\_ in 1869.

- Ans
- 1. Friedrich Miescher
  - 2. Oswald Avery
  - 3. William Astbury
  - 4. Alfred Hershey

Question ID : 98958010807  
Status : Not Answered  
Chosen Option : --

Q.1 00 \_\_\_\_\_ became India's first judo medallist at the Youth Olympics Games held in Argentina in 2018.

- Ans
- 1. Kalpana Devi
  - 2. Thangjam Tababi Devi
  - 3. Garima Chaudhary
  - 4. Rajwinder Kaur

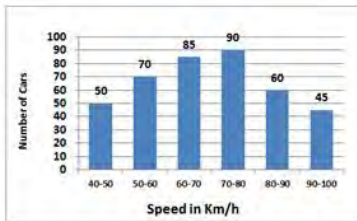
Question ID : 98958010828  
Status : Not Answered  
Chosen Option : --

Q.1 01 A cuboid of edges 32 cm, 4 cm and 4 cm is cut to form cubes of edge 4 cm each. What is the sum of total surface areas of all cubes formed?

- Ans
- 1. 768 cm<sup>2</sup>
  - 2. 544 cm<sup>2</sup>
  - 3. 576 cm<sup>2</sup>
  - 4. 640 cm<sup>2</sup>

Question ID : 98958010921  
Status : Answered  
Chosen Option : 1

Q.1 02

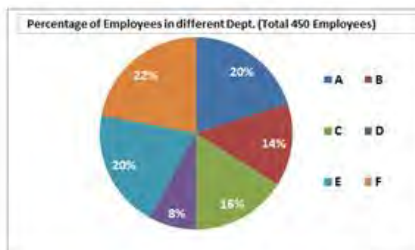


In the given histogram, what percentage of cars were running with the speed less than 60 km/h?

- Ans
- 1. 30%
  - 2. 25%
  - 3. 35%
  - 4. 28%

Question ID : 98958010941  
Status : Answered  
Chosen Option : 1

Q.1 03



In the given pie-chart, what is the number of employees working in department A?

- Ans
- 1. 85

- 2. 90
- 3. 80
- 4. 960

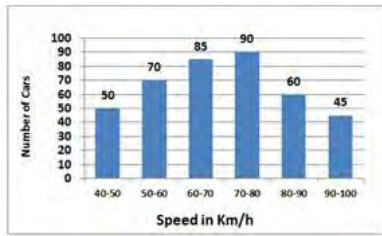
Question ID : 98958010938  
 Status : Answered  
 Chosen Option : 2

Q.1 04 The length of shadow of a vertical pole on the ground is 24 m. If the angle of elevation of the sun at that time is  $\theta$ , such that  $\sin \theta = \frac{5}{13}$ , then what is the height of the pole?

- Ans
- 1. 8 m
  - 2. 18 m
  - 3. 10 m
  - 4. 12 m

Question ID : 98958010933  
 Status : Answered  
 Chosen Option : 3

Q.1 05



In the given histogram, what is the mean speed of cars (in km/h) to nearest whole number?

- Ans
- 1. 69
  - 2. 70
  - 3. 71
  - 4. 72

Question ID : 98958010943  
 Status : Not Answered  
 Chosen Option : --

Q.1 06 The value of  $\frac{\sin^2 60^\circ + \cos^2 30^\circ - \sec 35^\circ \cdot \sin 55^\circ}{\sec 60^\circ + \operatorname{cosec} 30^\circ}$  is equal to:

- Ans
- 1.  $\frac{1}{4}$
  - 2.  $\frac{1}{2}$
  - 3.  $\frac{1}{8}$
  - 4.  $\frac{1}{3}$

Question ID : 98958010932  
 Status : Answered  
 Chosen Option : 3

Q.1 07 A sphere of radius 9 cm is melted and recast into small spheres of radius 2 cm each. How many such sphere can be made?

- Ans
- 1. 92
  - 2. 93
  - 3. 90
  - 4. 91

Question ID : 98958010923  
Status : Answered  
Chosen Option : 4

Q.1 08 A sum of ₹ 10,200 is invested partly at 8% per annum and remaining at 6% per annum for 3 years at simple interest. If the total interest is ₹ 2,124, how much money was invested at 6% per annum?

- Ans
- 1. ₹ 5,400
  - 2. ₹ 4,900
  - 3. ₹ 5,200
  - 4. ₹ 4,800

Question ID : 98958010911  
Status : Answered  
Chosen Option : 1

Q.1 09 Two pipes A and B can fill a tank in 16 hours and 20 hours respectively. They are opened alternatively for 1 hour each, starting with pipe A first. In how many hours with the empty tank be filled?

- Ans
- 1.  $17\frac{1}{5}$
  - 2.  $17\frac{3}{4}$
  - 3.  $17\frac{3}{5}$
  - 4.  $17\frac{1}{14}$

Question ID : 98958010916  
Status : Answered  
Chosen Option : 2

Q.1 10 The value of  $6\frac{1}{5} - [4\frac{1}{2} - \{\frac{5}{6} - (\frac{3}{5} + \frac{3}{10} - \frac{7}{15})\}]$  is:

- Ans
- 1. 2.1
  - 2. 2.5
  - 3. 1.8
  - 4. 2.8

Question ID : 98958010898  
Status : Answered  
Chosen Option : 1

Q.1 In a class of 45 students, 40% are boys and rest are girls. The average weight of the girls is 55 kg and that of boys is 65 kg. What is the average weight (in kg) of the whole class?

11

- Ans
- 1. 61 kg
  - 2. 59 kg
  - 3. 58 kg
  - 4. 60 kg

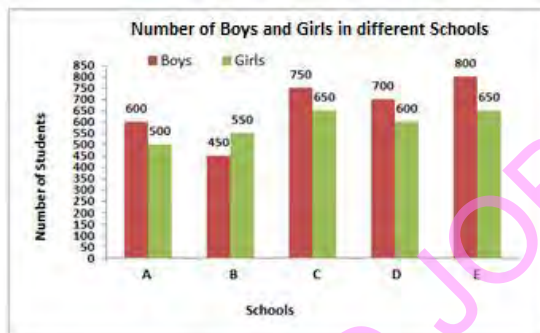
Question ID : 98958010901  
 Status : Answered  
 Chosen Option : 2

Q.1 One side of a rhombus is 6.5 cm and one of it's diagonal is 12 cm. What is the area of the rhombus?  
 12

- Ans
- 1. 15 cm<sup>2</sup>
  - 2. 60 cm<sup>2</sup>
  - 3. 30 cm<sup>2</sup>
  - 4. 78 cm<sup>2</sup>

Question ID : 98958010919  
 Status : Answered  
 Chosen Option : 3

Q.1  
 13



In the given bar graph, what is the average number of girls from all schools?

- Ans
- 1. 590
  - 2. 580
  - 3. 575
  - 4. 595

Question ID : 98958010937  
 Status : Answered  
 Chosen Option : 1

Q.1 The price of sugar has increased by 14%. By what percentage can a person decrease the consumption so that there is an increase in the expenditure by 8% only? (correct to one decimal place)  
 14

- Ans
- 1. 5.9%
  - 2. 5.5%
  - 3. 5.7%
  - 4. 5.3%



Question ID : 98958010906

Status : Not Answered

Chosen Option : --

Q.1 A boat can go 10 km downstream and 8 km upstream in 49 minutes. Also it can go 12 km downstream and 4 km upstream in 42 minutes. What is the speed of stream in km/h?

Ans

1. 2  
 2. 2.5  
 3. 1  
 4. 1.5

Question ID : 98958010918

Status : Not Answered

Chosen Option : --

Q.1 Pipes A and B can fill a tank in 16 hours and 24 hours respectively whereas pipe C can empty the full tank in 40 hours. All three pipes are opened together, but pipe A is closed after 8 hours. After how many hours, the remaining part of tank will be filled?

Ans

1. 30  
 2. 26  
 3. 22  
 4. 28

Question ID : 98958010915

Status : Answered

Chosen Option : 3

Q.1 If  $(x - 3)^2 + (2x - 5)^3 + (x - 4)^3 = (3x - 9)(2x - 5)(x - 4)$ , then what is the value of  $x$ ?

Ans

1. 5  
 2. 4  
 3. 2  
 4. 3

Question ID : 98958010926

Status : Answered

Chosen Option : 4

Q.1 If  $a^3 - b^3 = 3552$  and  $(a - b) = 6$ , then  $(a + b)^2 - ab$  is equal to:

Ans

1. 618  
 2. 636  
 3. 592  
 4. 568

Question ID : 98958010925

Status : Answered

Chosen Option : 3

Q.1 In an examination, 47% passed in science and 51% failed in mathematics. If 42% failed in both subjects, what percentage passed in both subjects?

Ans

- 1. 42%
- 2. 36%
- 3. 38%
- 4. 40%

Question ID : 98958010907  
Status : Answered  
Chosen Option : 3

Q.1 20 A shopkeeper marks the price of an article such that after giving a discount of 30%, he gains 20%. If the marked price of the article is ₹ 480, what is the cost price of the article?

- Ans
- 1. ₹ 300
  - 2. ₹ 280
  - 3. ₹ 260
  - 4. ₹ 250

Question ID : 98958010903  
Status : Answered  
Chosen Option : 2

Q.1 21  $\frac{63.5 \times 63.5 \times 63.5 + 36.5 \times 36.5 \times 36.5}{6.35 \times 6.35 + 3.65 \times 3.65 - 6.35 \times 3.65}$  is equal to:

- Ans
- 1. 10,000
  - 2. 1,000
  - 3. 1,00,000
  - 4. 100

Question ID : 98958010900  
Status : Answered  
Chosen Option : 4

Q.1 22 The sides of a triangle are 24 cm, 45 cm and 51 cm. At each of its vertices, circles of radius 10.5 cm are drawn. What is the area of the triangle, excluding the portion covered by sectors of the circles? ( $\pi = \frac{22}{7}$ )

- Ans
- 1. 366.75 cm<sup>2</sup>
  - 2. 464.75 cm<sup>2</sup>
  - 3. 244.75 cm<sup>2</sup>
  - 4. 327.75 cm<sup>2</sup>

Question ID : 98958010920  
Status : Not Answered  
Chosen Option : --

Q.1 23 16 persons working 6 hours a day can complete a work in 10 days. In how many days 24 persons working 8 hours a day will complete 80% of that work?

- Ans
- 1. 6
  - 2. 4
  - 3. 8

4. 3

Question ID : 98958010913  
Status : Answered  
Chosen Option : 2

Q.1  
24 The successive discounts of 30%, 25% and 15% is equivalent to a single discount of:

- Ans  1. 55.375%  
 2. 60.725%  
 3. 60.275%  
 4. 54.625%

Question ID : 98958010904  
Status : Answered  
Chosen Option : 1

Q.1  
25 If  $\sec 2x = \operatorname{cosec} (3x - 45^\circ)$ , then  $x$  is equal to:

- Ans  1.  $27^\circ$   
 2.  $45^\circ$   
 3.  $40^\circ$   
 4.  $35^\circ$

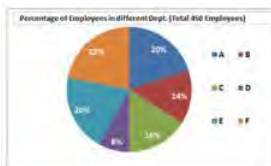
Question ID : 98958010931  
Status : Answered  
Chosen Option : 1

Q.1  
26 ABCD is a cyclic quadrilateral such that AB is a diameter of the circle circumscribing it and  $\angle ADC = 160^\circ$ . What is the measure of the  $\angle BAC$ ?

- Ans  1.  $70^\circ$   
 2.  $60^\circ$   
 3.  $65^\circ$   
 4.  $75^\circ$

Question ID : 98958010927  
Status : Answered  
Chosen Option : 1

Q.1  
27



In the given pie-chart, if the female employees in department D is 75%, then how many male employees are in that department?

- Ans  1. 5  
 2. 4  
 3. 6  
 4. 9

Question ID : 98958010940

Status : Answered

Chosen Option : 4

Q.1 The average of 20 numbers is 65. The average of the first 9 numbers is 68 and the average of next 8 numbers is 62. If the 18<sup>th</sup> number is 3 more than 19<sup>th</sup> number and 9 less than 20<sup>th</sup> number, then what is the average of 19<sup>th</sup> and 20<sup>th</sup> number?

- Ans
- 1. 65.5
  - 2. 65
  - 3. 66
  - 4. 64.5

Question ID : 98958010902

Status : Not Answered

Chosen Option : --

Q.1 The efficiencies of A, B and C are in the ratio 5 : 6 : 8. Working together, they can complete a piece of work in 120 hours. In how many hours will, B alone be able to complete 40% of that work?

- Ans
- 1. 182.4
  - 2. 152
  - 3. 114
  - 4. 167.2

Question ID : 98958010914

Status : Answered

Chosen Option : 2

Q.1  
30



In the given histogram, in which class interval, the median lies?

- Ans
- 1. 80-90
  - 2. 60-70
  - 3. 70-80
  - 4. 50-60

Question ID : 98958010942

Status : Not Answered

Chosen Option : --

Q.1 If the seven digit number  $3x6349y$  is divisible by 88, then what will be the value of  $(2x + 3y)$ ?

- Ans
- 1. 32
  - 2. 30
  - 3. 35

4. 28

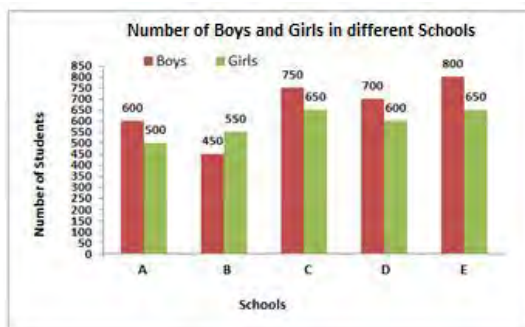
Question ID : 98958010895  
Status : Not Answered  
Chosen Option : --

Q.1 32 A shopkeeper sold two articles for ₹ 9,879 each. On one, he gained 11% and on the other, he lost 11%. What is the overall percentage gain or loss?

- Ans
- 1. 1.21% gain
  - 2. 1.21% loss
  - 3. 1.25% loss
  - 4. 1.25% gain

Question ID : 98958010908  
Status : Not Answered  
Chosen Option : --

Q.1 33



In the given bar graph, in which college, the percentage of boys is the highest?

- Ans
- 1. A
  - 2. D
  - 3. E
  - 4. C

Question ID : 98958010936  
Status : Answered  
Chosen Option : 1

Q.1 34 Two numbers are in the ratio 6 : 11. If their HCF is 28, then the sum of these two numbers is:

- Ans
- 1. 476
  - 2. 420
  - 3. 448
  - 4. 392

Question ID : 98958010896  
Status : Answered  
Chosen Option : 1

Q.1 35 What is the sum of digits of the least number, which when divided by 15, 18 and 42 leaves the same remainder 8 in each case and is also divisible by 13?

- Ans  1. 25  
 2. 26  
 3. 22  
 4. 24

Question ID : 98958010897  
Status : Not Answered  
Chosen Option : --

Q.1  
36 If  $x + \frac{1}{x} = 7$ , then  $x^3 + \frac{1}{x^3}$  is equal to:

- Ans  1. 385  
 2. 343  
 3. 322  
 4. 364

Question ID : 98958010924  
Status : Answered  
Chosen Option : 3

Q.1  
37 What is the ratio of mean proportional between 3.6 and 12.1 and third proportional between 2 and 11?

- Ans  1. 36 : 5  
 2. 6 : 5  
 3. 11 : 36  
 4. 6 : 55

Question ID : 98958010909  
Status : Not Answered  
Chosen Option : --

Q.1  
38 From the top of a 120 m high tower, the angle of depression of the top of a pole is  $45^\circ$  and the angle of depression of the foot of the pole is  $\theta$ , such that  $\tan \theta = \frac{3}{2}$ . What is the height of the pole?

- Ans  1. 75 m  
 2. 40 m  
 3. 60 m  
 4. 80 m

Question ID : 98958010934  
Status : Answered  
Chosen Option : 2

Q.1  
39  $\frac{17}{30} + \left[ 3\frac{1}{5} - \left\{ \frac{5}{6} - \left( 3\frac{4}{5} \div 9\frac{1}{2} \right) \right\} \right]$  is equal to:

- Ans  1.  $\frac{1}{5}$   
 2.  $\frac{10}{3}$



3.  $\frac{3}{5}$

4.  $\frac{11}{3}$

Question ID : 98958010899

Status : Answered

Chosen Option : 2

Q.1 40 If a train runs with the speed of 52 km/h, it reaches its destination late by 15 minutes. However, if its speed is 65 km/h, it is late by 5 minutes only. The right time for the train to cover its journey is:

Ans 1. 40 minutes

2. 45 minutes

3. 30 minutes

4. 35 minutes

Question ID : 98958010917

Status : Answered

Chosen Option : 4

Q.1 41 In  $\triangle ABC$ ,  $\angle A = 70^\circ$ . AB and AC are produced to points D and E respectively. If the bisectors of  $\angle CBD$  and  $\angle BCE$  meet at the point O, then  $\angle BOC$  is equal to:

Ans 1.  $95^\circ$

2.  $55^\circ$

3.  $70^\circ$

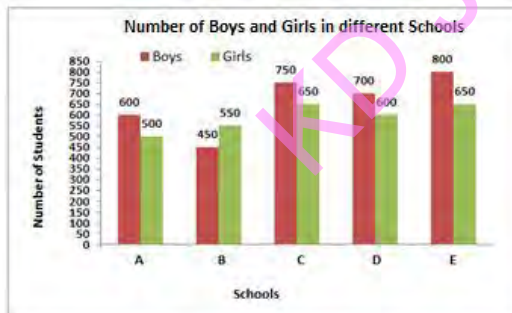
4.  $105^\circ$

Question ID : 98958010929

Status : Answered

Chosen Option : 2

Q.1 42



In the given bar graph, what is the ratio of the total boys and girls in all schools?

Ans 1. 66 : 59

2. 59 : 66

3. 65 : 58

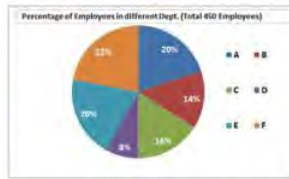
4. 65 : 63

Question ID : 98958010935

Status : Answered

Chosen Option : 1

Q.1  
43



In the given pie-chart, what is the central angle of the sector representing the number of employees in the department D?

- Ans
- 1.  $29.8^\circ$
  - 2.  $29.2^\circ$
  - 3.  $28.8^\circ$
  - 4.  $29.6^\circ$

Question ID : 98958010939  
Status : Answered  
Chosen Option : 3

Q.1 A sum of ₹ 10,000 is invested for 17 months at 8% per annum compounded half yearly. What is the percentage gain at  
44 the end of 17 month, nearest to one decimal place?

- Ans
- 1. 12.4%
  - 2. 12.0%
  - 3. 11.8%
  - 4. 12.2%

Question ID : 98958010912  
Status : Not Answered  
Chosen Option : --

Q.1 PA and PB are two tangents from a point P outside the circle with centre O. If A and B are points on the circle such that  
45  $\angle APB = 110^\circ$ , then  $\angle OAB$  is equal to:

- Ans
- 1.  $70^\circ$
  - 2.  $35^\circ$
  - 3.  $45^\circ$
  - 4.  $55^\circ$

Question ID : 98958010928  
Status : Answered  
Chosen Option : 4

Q.1 The square root which of the following is a rational number?  
46

- Ans
- 1. 5535.36
  - 2. 67508.5
  - 3. 72905.2
  - 4. 3152.88

Question ID : 98958010894  
Status : Not Answered  
Chosen Option : --

Q.1 The radius of a cylinder is increased by 60% and radius of base is decreased by 20%. What is percentage increase in it's volume?  
47

- Ans
- 1. 105.2%
  - 2. 105.8%
  - 3. 105.6%
  - 4. 104.8%

Question ID : 98958010922

Status : Answered

Chosen Option : 4

Q.1 48 A, B and C started a business by investing ₹ 1,37,500 and ₹ 1,62,500 and ₹ 1,87,500 respectively. A is a working partner and gets 20% of the profit as working allowance and remaining is distributed in the proportion of their investment. If the total profit is ₹ 2,19,375, what is the share of C?

- Ans
- 1. ₹ 88,600
  - 2. ₹ 62,700
  - 3. ₹ 67,500
  - 4. ₹ 64,500

Question ID : 98958010910

Status : Not Answered

Chosen Option : --

Q.1 49 Let  $\Delta ABC \sim \Delta RPQ$  and  $\frac{ar(\Delta ABC)}{ar(\Delta PQR)} = \frac{1}{9}$ . If  $AB = 3$  cm,  $BC = 4$  cm and  $AC = 5$  cm, then  $PQ$  is equal to:

- Ans
- 1. 9 cm
  - 2. 12 cm
  - 3. 18 cm
  - 4. 15 cm

Question ID : 98958010930

Status : Answered

Chosen Option : 1

Q.1 50 If the income of A is 24% less than income of B, then what percentage is B's income is more than that of A?

- Ans
- 1.  $\frac{600}{31}$  %
  - 2.  $\frac{600}{17}$  %
  - 3.  $\frac{600}{19}$  %
  - 4.  $\frac{600}{29}$  %

Question ID : 98958010905

Status : Answered

Chosen Option : 3

Comprehension:

In the following passage some words have been deleted. Fill in the blanks with the help of the alternatives given. Select the most appropriate option for each number.

The woolly mammoth was a very large elephant-like mammal that lived on Earth several thousand years \_\_\_\_\_ (1). Some mammoths grew to be four meters \_\_\_\_\_ (2) and the largest weighed almost nine tons. \_\_\_\_\_ (3) male and female mammoths had very large tusks and walked \_\_\_\_\_ (4) every continent except Australia \_\_\_\_\_ (5) South America. Sadly, these giant creatures became extinct.

SubQuestion No : 151

Q.1  
51 Select the most appropriate option to fill in blank No.1.

- Ans
- 1. ago
  - 2. before
  - 3. past
  - 4. ahead

Question ID : 98958010558

Status : Answered

Chosen Option : 1

Comprehension:

In the following passage some words have been deleted. Fill in the blanks with the help of the alternatives given. Select the most appropriate option for each number.

The woolly mammoth was a very large elephant-like mammal that lived on Earth several thousand years \_\_\_\_\_ (1). Some mammoths grew to be four meters \_\_\_\_\_ (2) and the largest weighed almost nine tons. \_\_\_\_\_ (3) male and female mammoths had very large tusks and walked \_\_\_\_\_ (4) every continent except Australia \_\_\_\_\_ (5) South America. Sadly, these giant creatures became extinct.

SubQuestion No : 152

Q.1  
52 Select the most appropriate option to fill in blank No.2.

- Ans
- 1. low
  - 2. high
  - 3. lofty
  - 4. huge

Question ID : 98958010559

Status : Answered

Chosen Option : 2

Comprehension:

In the following passage some words have been deleted. Fill in the blanks with the help of the alternatives given. Select the most appropriate option for each number.

The woolly mammoth was a very large elephant-like mammal that lived on Earth several thousand years \_\_\_\_\_ (1). Some mammoths grew to be four meters \_\_\_\_\_ (2) and the largest weighed almost nine tons. \_\_\_\_\_ (3) male and female mammoths had very large tusks and walked \_\_\_\_\_ (4) every continent except Australia \_\_\_\_\_ (5) South America. Sadly, these giant creatures became extinct.

SubQuestion No : 153

Q.1  
53 Select the most appropriate option to fill in blank No.3.

- Ans
- 1. Each
  - 2. Every
  - 3. Either
  - 4. Both

Question ID : 98958010560

Status : Answered

Chosen Option : 1

Comprehension:

In the following passage some words have been deleted. Fill in the blanks with the help of the alternatives given. Select the most appropriate option for each number.

The woolly mammoth was a very large elephant-like mammal that lived on Earth several thousand years \_\_\_\_\_ (1). Some mammoths grew to be four meters \_\_\_\_\_ (2) and the largest weighed almost nine tons. \_\_\_\_\_ (3) male and female mammoths had very large tusks and walked \_\_\_\_\_ (4) every continent except Australia \_\_\_\_\_ (5) South America. Sadly, these giant creatures became extinct.

SubQuestion No : 154

Q.1  
54 Select the most appropriate option to fill in blank No.4.

- Ans
- 1. into
  - 2. on
  - 3. under
  - 4. over

Question ID : 98958010561

Status : Answered

Chosen Option : 4

Comprehension:



In the following passage some words have been deleted. Fill in the blanks with the help of the alternatives given. Select the most appropriate option for each number.

The woolly mammoth was a very large elephant-like mammal that lived on Earth several thousand years \_\_\_\_\_ (1). Some mammoths grew to be four meters \_\_\_\_\_ (2) and the largest weighed almost nine tons. \_\_\_\_\_ (3) male and female mammoths had very large tusks and walked \_\_\_\_\_ (4) every continent except Australia \_\_\_\_\_ (5) South America. Sadly, these giant creatures became extinct.

SubQuestion No : 155

Q.1  
55 Select the most appropriate option to fill in blank No.5.

- Ans
- 1. also
  - 2. or
  - 3. but
  - 4. and

Question ID : 98958010562  
Status : Answered  
Chosen Option : 4

Q.1  
56 In the sentence identify the segment which contains the grammatical error.

No sooner he had left the house than there was a phone call for him.

- Ans
- 1. than there was
  - 2. No sooner
  - 3. he had left
  - 4. for him

Question ID : 98958010544  
Status : Answered  
Chosen Option : 3

Q.1  
57 Select the most appropriate word for the given group of words.

persons working at the same place

- Ans
- 1. homogeneous
  - 2. fellows
  - 3. colleagues
  - 4. contemporaries

Question ID : 98958010578  
Status : Answered  
Chosen Option : 3

Q.1  
58 Select the wrongly spelt word.



- Ans
- 1. devout
  - 2. devotion
  - 3. devious
  - 4. divert

Question ID : 98958010583  
Status : Answered  
Chosen Option : 3

Q.1  
59 Select the most appropriate word for the given group of words.

a place where fish are kept

- Ans
- 1. herbarium
  - 2. aquarium
  - 3. aviary
  - 4. zoo

Question ID : 98958010579  
Status : Answered  
Chosen Option : 2

Q.1  
60 Select the most appropriate option to substitute the underlined segment in the given sentence. If there is no need to substitute it, Select No improvement.

Kumbh Mela, held at Prayagraj at the confluence of the rivers Ganga and Yamuna, is knowing to be the bigger human gathering in the world.

- Ans
- 1. has been known to be the bigger human gathering
  - 2. is known to be the biggest human gathering
  - 3. No improvement
  - 4. is knowing to be the biggest human gathering

Question ID : 98958010548  
Status : Answered  
Chosen Option : 2

Q.1  
61 Select the most appropriate meaning of the given idiom.

the icing on the cake

- Ans
- 1. something that delays action
  - 2. Something that is essential but difficult to do
  - 3. something that makes one happy
  - 4. something that makes a good situation even better

Question ID : 98958010576  
Status : Answered  
Chosen Option : 2

Q.1

62 Select the synonym of the given word.

EXECUTE

- Ans
- 1. variety
  - 2. apply
  - 3. occupy
  - 4. implement

Question ID : 98958010563  
Status : Answered  
Chosen Option : 4

Q.1  
63 Select the antonym of the given word.

ANTIQUE

- Ans
- 1. conventional
  - 2. prehistoric
  - 3. modern
  - 4. traditional

Question ID : 98958010569  
Status : Answered  
Chosen Option : 4

Q.1  
64 Select the most appropriate word for the given group of words.

A system of government in which priests rule in the name of Gods or a god.

- Ans
- 1. oligarchy
  - 2. plutocracy
  - 3. theocracy
  - 4. aristocracy

Question ID : 98958010581  
Status : Not Answered  
Chosen Option : --

Q.1  
65 Select the synonym of the given word.

EXCURSION

- Ans
- 1. tour
  - 2. boating
  - 3. trekking
  - 4. holiday

Question ID : 98958010565  
Status : Answered

Q.1 66 Select the most appropriate option to substitute the underlined segment in the given sentence. If there is no need to substitute it, Select No improvement.

Officials say more than 10 million people take a dip at the confluence of the rivers Ganga and Yamuna in auspicious days for Kumbh Mela.

- Ans
- 1. in auspicious days during Kumbh Mela.
  - 2. No improvement
  - 3. on auspicious days for Kumbh Mela.
  - 4. on auspicious days during Kumbh Mela.

Question ID : 98958010550

Status : Answered

Chosen Option : 4

Q.1 67 Select the wrongly spelt word.

- Ans
- 1. rupee
  - 2. recieve
  - 3. rivalry
  - 4. reign

Question ID : 98958010585

Status : Answered

Chosen Option : 2

Q.1 68 Select the wrongly spelt word.

- Ans
- 1. valuable
  - 2. vaccum
  - 3. victory
  - 4. villain

Question ID : 98958010586

Status : Answered

Chosen Option : 2

Q.1 69 Select the wrongly spelt word.

- Ans
- 1. equivelant
  - 2. equivocal
  - 3. equation
  - 4. equality

Question ID : 98958010584

Status : Answered

Chosen Option : 1

Q.1 Select the most appropriate word for the given group of words.

70 an instrument for measuring time accurately in spite of motion or variations in temperature, humidity, and air pressure.

- Ans
- 1. chronometer
  - 2. cardiograph
  - 3. cryptograph
  - 4. crescograph

Question ID : 98958010582  
Status : Answered  
Chosen Option : 1

Q.1 In the sentence identify the segment which contains the grammatical error.

71 A new research study has shown that long before they took up a strict vegetarian diet, the much loved pandas was a meat-eater.

- Ans
- 1. took up
  - 2. has shown
  - 3. that long before
  - 4. was a meat-eater

Question ID : 98958010546  
Status : Answered  
Chosen Option : 4

Q.1 Select the most appropriate word for the given group of words.

72 a wooden drum in which beer or oil is stored

- Ans
- 1. barrel
  - 2. cache
  - 3. gale
  - 4. bale

Question ID : 98958010580  
Status : Answered  
Chosen Option : 1

Q.1 Select the most appropriate meaning of the given idiom.

73 Donkey's years

- Ans
- 1. having long ears
  - 2. a very long time
  - 3. instantly
  - 4. once in a while

Question ID : 98958010577  
Status : Answered  
Chosen Option : 2

Q.1 74 Select the most appropriate option to substitute the underlined segment in the given sentence. If there is no need to substitute it, Select No improvement.

A fire broke out in a slum cluster in the capital yesterday for short circuit at the overhanging wires.

- Ans
- 1. due to short circuit in the overhanging wires.
  - 2. due to short circuiting on the overhanging wires.
  - 3. No improvement
  - 4. for short circuit in the overhanging wires.

Question ID : 98958010549  
Status : Answered  
Chosen Option : 1

Q.1 75 Select the most appropriate option to substitute the underlined segment in the given sentence. If there is no need to substitute it, Select No improvement.

All the professor of this college are provided with free bungalows.

- Ans
- 1. All professor of this college
  - 2. Each professor of this college
  - 3. No improvement
  - 4. All the professors of this college

Question ID : 98958010547  
Status : Answered  
Chosen Option : 4

Q.1 76 Select the antonym of the given word.

IMMACULATE

- Ans
- 1. messy
  - 2. flawless
  - 3. systematic
  - 4. untarnished

Question ID : 98958010572  
Status : Not Answered  
Chosen Option : --

Q.1 77 Select the most appropriate word to fill in the blank.

She left \_\_\_\_\_ Mumbai \_\_\_\_\_ the Rajdhani Express yesterday.

- Ans
- 1. out; by
  - 2. in; in
  - 3. to; at
  - 4. for; by

Question ID : 98958010553  
Status : Answered

Q.1  
78 Select the most appropriate meaning of the given idiom.

to be taken aback

- Ans
- 1. to pay no heed
  - 2. to be very excited
  - 3. to be surprised
  - 4. to take something back

Question ID : 98958010575  
Status : Answered  
Chosen Option : 1

Q.1  
79 Select the wrongly spelt word.

- Ans
- 1. occasion
  - 2. provision
  - 3. invasion
  - 4. ommision

Question ID : 98958010587  
Status : Answered  
Chosen Option : 4

Q.1  
80 Select the synonym of the given word.

AVOID

- Ans
- 1. evade
  - 2. pursue
  - 3. face
  - 4. approach

Question ID : 98958010566  
Status : Answered  
Chosen Option : 1

Comprehension:



Read the following passage and answer the questions given after it.

Some 200 km from Leh are the villages of Dha, Hanu, Garkone and Darchik on both sides of the Indus River, inhabited by the Buddhist Dard Tribes. The villages are together called the “Aryan valley”. “The word ‘Dard’ is derived from a Sanskrit word, ‘Daradas’, which means people who live on hillsides,” said Virendra Bangroo, assistant professor at Indira Gandhi National Centre for the Arts (IGNCA), who has extensively researched on their lives. He added people of this region are culturally and linguistically different from those in other parts of Ladakh. Among other researchers who have gone into the community’s roots, there is a line of thought that the “Aryans of Ladakh” or the “Brokpas” might have descended from soldiers in Alexander’s army who had come to the region over 2,000 years ago. The Dard Aryans, however, do not document their history, Bangroo said.

They rear goat and sheep for milk and meat, and their festivals are based on the solar calendar. Bangroo visited the regions inhabited by the Dard Aryan community back in 2017, where he helped set up two museums to archive their cultural heritage. Bangroo is of the view that their traditions go back 5,000 years; those who still follow the original customs worship trees, rivers and mountains. These tribals are mainly dependent on agriculture; the apricots grown here are considered among the best in the world and there are 12 varieties of grapes in the region. Bangroo said grape-wine is very popular in the “Aryan valley”.

A number of researchers, as well as the tribals, perceive a threat to the heritage of the community owing to modernisation, migration and religious conversion. The community now numbers about 4,000. Over the last few decades, many of them have embraced Islam or Buddhism. “The community prohibits marriage with outsiders to keep the gene pool intact. Of late, the Dard men have been migrating to other parts of the region in search of livelihood and marrying outside the tribe,” Bangroo said. “The tribe is struggling to find a balance between modernity and traditional values.” Also, after the Kargil War, development work in this region has been restricted. Some of the areas of the Aryan valley are out of bounds for outsiders, since it borders Pakistan-occupied Kashmir.

Members of the community said there are only three high schools in their villages and very limited resources for livelihood — mainly because of the harsh weather and difficult terrain. As such, they have no option but to migrate to cities for higher education and employment. They have demanded that the government set up a tribal hostel and declare the “Aryan valley” a heritage village to boost tourism.

Q.1  
81 The first paragraph of the passage mainly talks about

- Ans
- 1. the concerns of Dard Aryans.
  - 2. the customs of Dard Aryans.
  - 3. what the demands of Dard Aryans are.
  - 4. who the Dard Aryans are.

Question ID : 98958010589

Status : Answered

Chosen Option : 4

Comprehension:

KD JOB UPDATES

Read the following passage and answer the questions given after it.

Some 200 km from Leh are the villages of Dha, Hanu, Garkone and Darchik on both sides of the Indus River, inhabited by the Buddhist Dard Tribes. The villages are together called the “Aryan valley”. “The word ‘Dard’ is derived from a Sanskrit word, ‘Daradas’, which means people who live on hillsides,” said Virendra Bangroo, assistant professor at Indira Gandhi National Centre for the Arts (IGNCA), who has extensively researched on their lives. He added people of this region are culturally and linguistically different from those in other parts of Ladakh. Among other researchers who have gone into the community’s roots, there is a line of thought that the “Aryans of Ladakh” or the “Brokpas” might have descended from soldiers in Alexander’s army who had come to the region over 2,000 years ago. The Dard Aryans, however, do not document their history, Bangroo said.

They rear goat and sheep for milk and meat, and their festivals are based on the solar calendar. Bangroo visited the regions inhabited by the Dard Aryan community back in 2017, where he helped set up two museums to archive their cultural heritage. Bangroo is of the view that their traditions go back 5,000 years; those who still follow the original customs worship trees, rivers and mountains. These tribals are mainly dependent on agriculture; the apricots grown here are considered among the best in the world and there are 12 varieties of grapes in the region. Bangroo said grape-wine is very popular in the “Aryan valley”.

A number of researchers, as well as the tribals, perceive a threat to the heritage of the community owing to modernisation, migration and religious conversion. The community now numbers about 4,000. Over the last few decades, many of them have embraced Islam or Buddhism. “The community prohibits marriage with outsiders to keep the gene pool intact. Of late, the Dard men have been migrating to other parts of the region in search of livelihood and marrying outside the tribe,” Bangroo said. “The tribe is struggling to find a balance between modernity and traditional values.” Also, after the Kargil War, development work in this region has been restricted. Some of the areas of the Aryan valley are out of bounds for outsiders, since it borders Pakistan-occupied Kashmir.

Members of the community said there are only three high schools in their villages and very limited resources for livelihood — mainly because of the harsh weather and difficult terrain. As such, they have no option but to migrate to cities for higher education and employment. They have demanded that the government set up a tribal hostel and declare the “Aryan valley” a heritage village to boost tourism.



Q.1  
82 What is the main concern of the Dard Aryans?

- Ans
- 1. people of the community are becoming modern.
  - 2. some people are converting their religion.
  - 3. their heritage is facing a threat.
  - 4. many people are migrating from the villages.

Question ID : 98958010590

Status : Answered

Chosen Option : 3

Comprehension:

KD JOB UPDATES

Read the following passage and answer the questions given after it.

Some 200 km from Leh are the villages of Dha, Hanu, Garkone and Darchik on both sides of the Indus River, inhabited by the Buddhist Dard Tribes. The villages are together called the “Aryan valley”. “The word ‘Dard’ is derived from a Sanskrit word, ‘Daradas’, which means people who live on hillsides,” said Virendra Bangroo, assistant professor at Indira Gandhi National Centre for the Arts (IGNCA), who has extensively researched on their lives. He added people of this region are culturally and linguistically different from those in other parts of Ladakh. Among other researchers who have gone into the community’s roots, there is a line of thought that the “Aryans of Ladakh” or the “Brokpas” might have descended from soldiers in Alexander’s army who had come to the region over 2,000 years ago. The Dard Aryans, however, do not document their history, Bangroo said.

They rear goat and sheep for milk and meat, and their festivals are based on the solar calendar. Bangroo visited the regions inhabited by the Dard Aryan community back in 2017, where he helped set up two museums to archive their cultural heritage. Bangroo is of the view that their traditions go back 5,000 years; those who still follow the original customs worship trees, rivers and mountains. These tribals are mainly dependent on agriculture; the apricots grown here are considered among the best in the world and there are 12 varieties of grapes in the region. Bangroo said grape-wine is very popular in the “Aryan valley”.

A number of researchers, as well as the tribals, perceive a threat to the heritage of the community owing to modernisation, migration and religious conversion. The community now numbers about 4,000. Over the last few decades, many of them have embraced Islam or Buddhism. “The community prohibits marriage with outsiders to keep the gene pool intact. Of late, the Dard men have been migrating to other parts of the region in search of livelihood and marrying outside the tribe,” Bangroo said. “The tribe is struggling to find a balance between modernity and traditional values.” Also, after the Kargil War, development work in this region has been restricted. Some of the areas of the Aryan valley are out of bounds for outsiders, since it borders Pakistan-occupied Kashmir.

Members of the community said there are only three high schools in their villages and very limited resources for livelihood — mainly because of the harsh weather and difficult terrain. As such, they have no option but to migrate to cities for higher education and employment. They have demanded that the government set up a tribal hostel and declare the “Aryan valley” a heritage village to boost tourism.

Q.1  
83 What are the demands of the Dard Aryans from the government?

- Ans
1. to boost tourism and take up development work in the valley
  2. to set up a tribal hostel and declare the Aryan Valley a heritage village
  3. to stop migration of people and set up a school
  4. to provide livelihood and establish a tribal hostel

Question ID : 98958010591

Status : Answered

Chosen Option : 2

Comprehension:

KD JOB UPDATES



Read the following passage and answer the questions given after it.

Some 200 km from Leh are the villages of Dha, Hanu, Garkone and Darchik on both sides of the Indus River, inhabited by the Buddhist Dard Tribes. The villages are together called the “Aryan valley”. “The word ‘Dard’ is derived from a Sanskrit word, ‘Daradas’, which means people who live on hillsides,” said Virendra Bangroo, assistant professor at Indira Gandhi National Centre for the Arts (IGNCA), who has extensively researched on their lives. He added people of this region are culturally and linguistically different from those in other parts of Ladakh. Among other researchers who have gone into the community’s roots, there is a line of thought that the “Aryans of Ladakh” or the “Brokpas” might have descended from soldiers in Alexander’s army who had come to the region over 2,000 years ago. The Dard Aryans, however, do not document their history, Bangroo said.

They rear goat and sheep for milk and meat, and their festivals are based on the solar calendar. Bangroo visited the regions inhabited by the Dard Aryan community back in 2017, where he helped set up two museums to archive their cultural heritage. Bangroo is of the view that their traditions go back 5,000 years; those who still follow the original customs worship trees, rivers and mountains. These tribals are mainly dependent on agriculture; the apricots grown here are considered among the best in the world and there are 12 varieties of grapes in the region. Bangroo said grape-wine is very popular in the “Aryan valley”.

A number of researchers, as well as the tribals, perceive a threat to the heritage of the community owing to modernisation, migration and religious conversion. The community now numbers about 4,000. Over the last few decades, many of them have embraced Islam or Buddhism. “The community prohibits marriage with outsiders to keep the gene pool intact. Of late, the Dard men have been migrating to other parts of the region in search of livelihood and marrying outside the tribe,” Bangroo said. “The tribe is struggling to find a balance between modernity and traditional values.” Also, after the Kargil War, development work in this region has been restricted. Some of the areas of the Aryan valley are out of bounds for outsiders, since it borders Pakistan-occupied Kashmir.

Members of the community said there are only three high schools in their villages and very limited resources for livelihood — mainly because of the harsh weather and difficult terrain. As such, they have no option but to migrate to cities for higher education and employment. They have demanded that the government set up a tribal hostel and declare the “Aryan valley” a heritage village to boost tourism.

Q.1  
84 Which statement indicates best that the Dard Aryans is a community with ancient past?

- Ans
- 1. Dar Aryans rear goat and sheep for milk and meat, and their festivals are based on the solar calendar.
  - 2. Bangroo is of the view that their traditions go back 5,000 years; those who still follow the original customs worship trees, rivers and mountains.
  - 3. The word 'Dard' is derived from a Sanskrit word, 'Daradas', which means people who live on hillsides
  - 4. Some scholars think that they might have descended from the soldiers in Alexander's army who had come about 2000 years ago.

Question ID : 98958010592

Status : Answered

Chosen Option : 2

Comprehension:

KD JOB UPDATES



Read the following passage and answer the questions given after it.

Some 200 km from Leh are the villages of Dha, Hanu, Garkone and Darchik on both sides of the Indus River, inhabited by the Buddhist Dard Tribes. The villages are together called the “Aryan valley”. “The word ‘Dard’ is derived from a Sanskrit word, ‘Daradas’, which means people who live on hillsides,” said Virendra Bangroo, assistant professor at Indira Gandhi National Centre for the Arts (IGNCA), who has extensively researched on their lives. He added people of this region are culturally and linguistically different from those in other parts of Ladakh. Among other researchers who have gone into the community’s roots, there is a line of thought that the “Aryans of Ladakh” or the “Brokpas” might have descended from soldiers in Alexander’s army who had come to the region over 2,000 years ago. The Dard Aryans, however, do not document their history, Bangroo said.

They rear goat and sheep for milk and meat, and their festivals are based on the solar calendar. Bangroo visited the regions inhabited by the Dard Aryan community back in 2017, where he helped set up two museums to archive their cultural heritage. Bangroo is of the view that their traditions go back 5,000 years; those who still follow the original customs worship trees, rivers and mountains. These tribals are mainly dependent on agriculture; the apricots grown here are considered among the best in the world and there are 12 varieties of grapes in the region. Bangroo said grape-wine is very popular in the “Aryan valley”.

A number of researchers, as well as the tribals, perceive a threat to the heritage of the community owing to modernisation, migration and religious conversion. The community now numbers about 4,000. Over the last few decades, many of them have embraced Islam or Buddhism. “The community prohibits marriage with outsiders to keep the gene pool intact. Of late, the Dard men have been migrating to other parts of the region in search of livelihood and marrying outside the tribe,” Bangroo said. “The tribe is struggling to find a balance between modernity and traditional values.” Also, after the Kargil War, development work in this region has been restricted. Some of the areas of the Aryan valley are out of bounds for outsiders, since it borders Pakistan-occupied Kashmir.

Members of the community said there are only three high schools in their villages and very limited resources for livelihood — mainly because of the harsh weather and difficult terrain. As such, they have no option but to migrate to cities for higher education and employment. They have demanded that the government set up a tribal hostel and declare the “Aryan valley” a heritage village to boost tourism.

Q.1  
85 Which statement is NOT true according to the passage?

- Ans
- 1. The Aryans are culturally and linguistically the same as the other people of Ladakh.
  - 2. Dard Aryans have to migrate to cities for higher education and employment.
  - 3. There are only three high schools in their villages and very limited resources for livelihood
  - 4. The valley has a difficult terrain and faces harsh weather conditions.

Question ID : 98958010593

Status : Answered

Chosen Option : 1

Q.1  
86 Select the most appropriate option to substitute the underlined segment in the given sentence. If there is no need to substitute it, Select No improvement.

Australia had to deploy the army to tackle the devastating floods that inundate homes, schools and airports in the country's northeastern part.

- Ans
- 1. the devastating floods that were inundating homes
  - 2. the devastating floods what inundate homes
  - 3. No improvement
  - 4. the devastating floods that inundated homes

Question ID : 98958010551

Status : Answered

Chosen Option : 1

Q.1  
87 Select the most appropriate word to fill in the blank.

The flat \_\_\_\_\_ is nice but the approach road is too narrow and congested.

- Ans
- 1. herself
  - 2. oneself
  - 3. itself
  - 4. himself

Question ID : 98958010555

Status : Answered

Chosen Option : 3

Q.1  
88 In the sentence identify the segment which contains the grammatical error.

From my hotel I could see that a flock of birds were flying over the lake.

- Ans
- 1. From my hotel
  - 2. I could see
  - 3. over the lake
  - 4. were flying

Question ID : 98958010543

Status : Answered

Chosen Option : 4

Q.1 Select the most appropriate word to fill in the blank.

89

After the end of this lesson you \_\_\_\_\_ be able to write a paragraph on this topic.

- Ans
- 1. could
  - 2. can
  - 3. will
  - 4. must

Question ID : 98958010552

Status : Answered

Chosen Option : 3

Q.1 Select the most appropriate meaning of the given idiom.

90

get a gold star

- Ans
- 1. to compliment someone
  - 2. to earn a merit point for doing well
  - 3. to get killed in war
  - 4. to obtain possession of something

Question ID : 98958010573

Status : Answered

Chosen Option : 2

Q.1 Select the most appropriate word to fill in the blank.

91

I saw her \_\_\_\_\_ your cupboard.

- Ans
- 1. to opening
  - 2. opening
  - 3. opened
  - 4. to open

Question ID : 98958010556

Status : Answered

Chosen Option : 2

Q.1 In the sentence identify the segment which contains the grammatical error.

92

Although the toys are altogether in the cupboard they are not properly arranged.

- Ans
- 1. in the cupboard
  - 2. are altogether
  - 3. Although the toys



4. are not properly arranged

Question ID : 98958010545  
Status : Answered  
Chosen Option : 4

Q.1  
93 Select the antonym of the given word.

DETER

- Ans  1. encourage  
 2. dissuade  
 3. excite  
 4. prevent

Question ID : 98958010571  
Status : Answered  
Chosen Option : 4

Q.1 Select the most appropriate word to fill in the blank.

94 We cannot postpone today's discussion on the issue of security of the colony \_\_\_\_\_ it is urgent.

- Ans  1. therefore  
 2. although  
 3. in case  
 4. because

Question ID : 98958010554  
Status : Answered  
Chosen Option : 4

Q.1 Select the synonym of the given word.

95

REMEDY

- Ans  1. healing  
 2. cure  
 3. restore  
 4. bearing

Question ID : 98958010564  
Status : Answered  
Chosen Option : 2

Q.1 Select the antonym of the given word.

96

AGILE

- Ans  1. nimble  
 2. strong  
 3. confused



✓ 4. lethargic

Question ID : 98958010568

Status : Answered

Chosen Option : 2

Q.1  
97 In the sentence identify the segment which contains the grammatical error.

Silver, as well as gold, are considered as precious metals.

Ans ✓ 1. are considered

✗ 2. as precious metals.

✗ 3. Silver

✗ 4. as well as

Question ID : 98958010542

Status : Answered

Chosen Option : 1

Q.1  
98 Select the most appropriate meaning of the given idiom.

Take heart

Ans ✗ 1. to rebuke

✗ 2. to feel grieved

✗ 3. to assess the situation

✓ 4. to take courage

Question ID : 98958010574

Status : Answered

Chosen Option : 4

Q.1  
99 Select the synonym of the given word.

NINCOMPOOP

Ans ✗ 1. clever

✗ 2. innocent

✓ 3. foolish

✗ 4. bold

Question ID : 98958010567

Status : Not Answered


Chosen Option : --


Q.2  
00 Select the antonym of the given word.

BOISTEROUS

Ans ✗ 1. excited

✗ 2. unruly

 3. turbulent

 4. peaceful

Question ID : **98958010570**

Status : **Not Answered**

Chosen Option : --

KD JOB UPDATES

## Recruitment of Sub-Inspector in Delhi Police, CAPFs and Assistant Sub-Inspector in CISF Examination, 2018

Roll No. :	
Registration No.	
Name :	
Exam Venue :	
Exam Time :	10:00 AM - 12:00 PM
Exam Date :	14/03/2019

Section : SI CPO

Q.1 Which number will come next in the following series?

1, 4, 4, 16, 64, \_\_\_\_\_

- Ans
- 1. 216
  - 2. 128
  - 3. 1024
  - 4. 1026

Question ID : 98958011066

Status : Answered

Chosen Option : 3

Q.2 Consider the following statements to be true even if they seem to be at variance from commonly known facts and decide which of the conclusions logically follows from the statements.

Statements:

- A. All roads are vehicles.
- B. Some vehicles are trees.

Conclusions:

- I. Some trees are roads.
- II. All vehicles are trees.

- Ans
- 1. Only conclusion I follows
  - 2. Both conclusions I and II follow
  - 3. Neither conclusion I nor conclusion II follow
  - 4. Only conclusion II follows

Question ID : 98958011062

Status : Answered

Chosen Option : 3

Q.3 In a certain language, EMBEZZLE is coded as MEEBZZEL. How will MAXIMIZE be coded in the same language?

- Ans
- 1. EMIXIMEM
  - 2. AIMXMIEZ
  - 3. AMIMIXEZ
  - 4. AMIXIMEZ

Question ID : 98958011058  
Status : Answered  
Chosen Option : 4

Q.4 Select the word-pair in which the two words are related in the same way as are the two words in the following word-pair.

Mammal : Bear

- Ans  1. Plants : Food  
 2. Pen : Pencil  
 3. Fruit : Mango  
 4. Player : Team

Question ID : 98958011055  
Status : Answered  
Chosen Option : 3

Q.5 In a certain code language 'CANDLE' is written as 'D1OEM2' and 'MODERN' is written as N4E2SO. How will 'BEWARE' be written in the same code language?

- Ans  1. D2OEM2  
 2. CFY2S2  
 3. C2X1S2  
 4. C2X2S2

Question ID : 98958011061  
Status : Not Answered  
Chosen Option : --

Q.6 If in a certain code 'OPERATION' is written as 'BWDATXPBJ' and 'PARENT' is written as 'WTADJX', how will 'ORIENT' be written in that code?

- Ans  1. PSJFOU  
 2. BWPDJX  
 3. BAPDJX  
 4. BPADJX

Question ID : 98958011059  
Status : Not Answered  
Chosen Option : --

Q.7 Select the option that is related to the third term in the same way as the second term is related to the first term.

6 : 18 : : 14 : \_\_\_\_\_

- Ans  1. 70  
 2. 108  
 3. 98  
 4. 64

Question ID : 98958011068  
Status : Not Answered  
Chosen Option : --

Q.8

Select the word-pair in which the two words are related in the same way as are the two words in the following word-pair.

Doctor : Hospital

- Ans
- 1. Museum : Visitor
  - 2. Governor : President
  - 3. Teacher : School
  - 4. Supervisor : Officer

Question ID : 98958011054  
Status : Answered  
Chosen Option : 3

Q.9 Three of the following four letter-clusters are alike in a certain way and one is different. Find the odd one out.

- Ans
- 1. EEfgg
  - 2. CCdee
  - 3. KKlmm
  - 4. TTuvv

Question ID : 98958011049  
Status : Answered  
Chosen Option : 3

Q.1 If South-East becomes North, North-East becomes West and so on, what will South-West become?

- 0
- Ans
- 1. West
  - 2. South
  - 3. North
  - 4. East

Question ID : 98958011079  
Status : Answered  
Chosen Option : 4

Q.1 Which number in the given series is INCORRECT?

11, 30, 67, 120, 219, 346

- Ans
- 1. 120
  - 2. 67
  - 3. 11
  - 4. 346

Question ID : 98958011064  
Status : Not Answered  
Chosen Option : --

Q.1 If AN = 14 and CAT = 60, then BEG = ?

- 2
- Ans
- 1. 72



- 2. 68
- 3. 74
- 4. 70

Question ID : 98958011060  
 Status : Answered  
 Chosen Option : 4

**Q.1** Consider the following statements to be true even if they seem to be at variance from commonly known facts and decide which of the conclusions logically follows from the statements.

**Statements:**

- A. Some bulbs are LEDs.
- B. Some LEDs are tubelights.

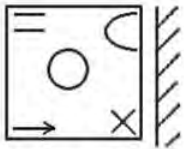
**Conclusions:**

- I. Some tubelights are bulbs.
- II. No tubelight is a bulb.

- Ans**
- 1. Neither conclusion I nor II follows
  - 2. Only conclusion II follows
  - 3. Either conclusion I or II follows
  - 4. Only conclusion I follows

Question ID : 98958011063  
 Status : Answered  
 Chosen Option : 3

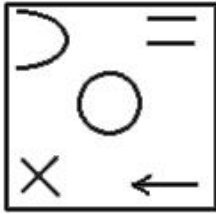
**Q.1** Select the mirror image of the given figure when the mirror is placed vertically to the right of the figure.



**Ans**

- 1.
- 2.
- 3.

✓ 4.



Question ID : 98958011088

Status : Answered

Chosen Option : 4

Q.1 Select the figure that will come next in the following figure series.

5



Ans

✗ 1.



✗ 2.



✗ 3.



✓ 4.



Question ID : 98958011083

Status : Answered

Chosen Option : 4

Q.1 Three of the following four letter-clusters are alike in a certain way and one is different. Find the odd one out.

6

Ans

✗ 1. LNPRT

✗ 2. DFHJL

✓ 3. HJMOR

✗ 4. NPRTV

Question ID : 98958011048

Status : Answered

Chosen Option : 3

Q.1  
7 Choose the mirror image of the given word if the mirror is placed to the right of the word.

BK5ORP62

Ans

- 1. BK5ORP92
- 2. BK2ORP62
- 3. BK2ORP62
- 4. BK2ORP62

Question ID : 98958011089  
Status : Answered  
Chosen Option : 4

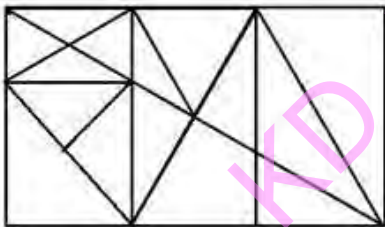
Q.1  
8 'Skating' is related to 'Rink' in the same way as 'Tennis' is related to:

Ans

- 1. Racket
- 2. Court
- 3. Arena
- 4. Pitch

Question ID : 98958011053  
Status : Answered  
Chosen Option : 2

Q.1  
9 How many triangles are there in the following figure?



Ans

- 1. 30
- 2. 36
- 3. 35
- 4. 34

Question ID : 98958011084  
Status : Answered  
Chosen Option : 1

Q.2  
0 If + means '+', - means '+', × means '-' and ÷ means '×', then what will be the value of the following expression?

$$18 \div 6 - 27 + 3 \times 12 = ?$$

- Ans
- 1. 92
  - 2. 95
  - 3. 105
  - 4. 107

Question ID : 98958011077  
 Status : Answered  
 Chosen Option : 3

Q.2  
 1 'Ocean' is related to 'Water' in the same way as 'Desert' is related to:

- Ans
- 1. Mountain
  - 2. Wind
  - 3. Sand
  - 4. Wave

Question ID : 98958011052  
 Status : Answered  
 Chosen Option : 3

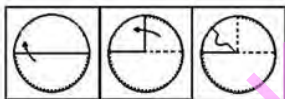
Q.2  
 2 Select the option that is related to the third term in the same way as the second term is related to the first term.

REFORM : MROFER : : ACTION : \_\_\_\_\_

- Ans
- 1. CTIONA
  - 2. NOTICA
  - 3. CTOINA
  - 4. NOITCA

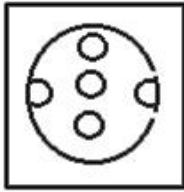
Question ID : 98958011056  
 Status : Answered  
 Chosen Option : 4

Q.2  
 3 A circular piece of paper is folded and cut as shown below. How will it appear when unfolded?

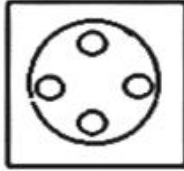


- Ans
- 1.
  - 2.

3.



4.



Question ID : 98958011090

Status : Answered

Chosen Option : 4

Q.2 Mayank's house faces South. He leaves from the back gate of his house and walks 18 m. Then he turns right and walks 4 28 m. Then he turns right and walks 35 m. Then he turns left and walks 12 m. He then turns left and walks 17 m. In which direction and how many metres away is he from the original position?

- Ans  1. 40 meters East  
 2. 30 meters West  
 3. 20 meters North  
 4. 17 meters South

Question ID : 98958011080

Status : Answered

Chosen Option : 1

Q.2 Which number will come next in the following series?  
5

3, 7, 16, 32, 57, \_\_\_\_\_

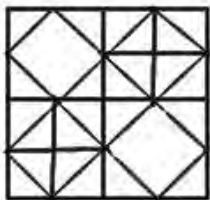
- Ans  1. 98  
 2. 93  
 3. 80  
 4. 85

Question ID : 98958011065

Status : Answered

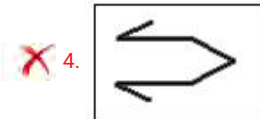
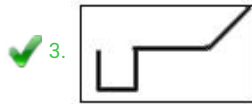
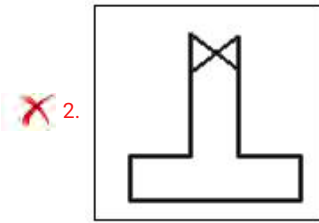

Chosen Option : 2

Q.2 Select the answer figure which is embedded in the given figure.  
6



Ans





Question ID : 98958011087

Status : Answered

Chosen Option : 2

Q.2 Select the correct alternative to indicate the arrangement of the following words in a logical and meaningful order.

7

1. Ornaments
2. Gold
3. Goldsmith
4. Jewelry shop
5. Bride

Ans  1. 2, 5, 4, 3, 1

2. 4, 2, 5, 3, 1

3. 2, 3, 1, 4, 5

4. 2, 4, 5, 1, 3

Question ID : 98958011046

Status : Answered

Chosen Option : 3

Q.2 Which set of letters will come next in the following series?

8

BDZ, DGX, FJV, HMT, JPR, \_\_\_\_\_

Ans  1. LSO

2. LSP

3. MSP

4. LTP

Question ID : 98958011045

Status : Answered

Chosen Option : 2


Q.2

9 Select the figure in which the given figure is embedded.



Ans

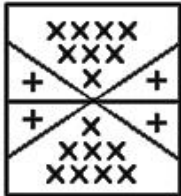
1.



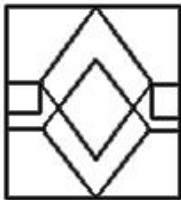
2.



3.



4.



Question ID : 98958011086

Status : Answered

Chosen Option : 4

Q.3 Three of the following four numbers are alike in a certain way and one is different. Find the odd one out.

0

Ans  1. 52

2. 60

3. 78

4. 130

Question ID : 98958011070

Status : Not Answered

Chosen Option : --

Q.3 Select the number-pair in which the two numbers are related in the same way as are the two numbers of the given number pair.

1

36 : 49

Ans  1. 16 : 36

2. 256 : 361

3. 289 : 324

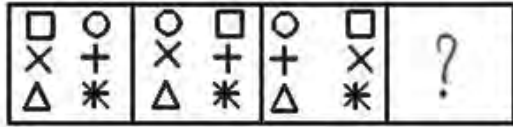
4. 25 : 64

Question ID : 98958011069

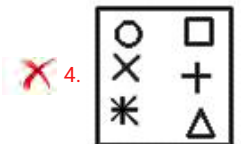
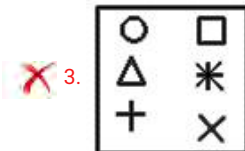
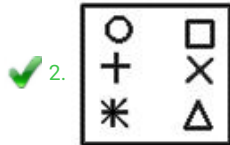
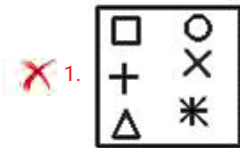
Status : Answered

Chosen Option : 2

Q.3  
2 Select the figure that will come next in the following figure series.



Ans

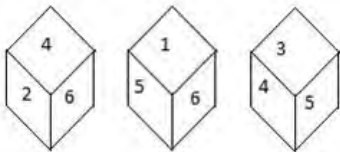


Question ID : 98958011082

Status : Answered

Chosen Option : 1

Q.3  
3 Three different positions of a dice are shown below. Find the number opposite '2'.



Ans  1. 6

2. 3

3. 1

4. 5

Question ID : 98958011085

Status : Answered

Q.3  
4 Select the set of numbers that is similar to the following set of numbers.

(7, 16, 34)

- Ans
- 1. (10, 19, 28)
  - 2. (23, 31, 48)
  - 3. (29, 57, 96)
  - 4. (49, 58, 76)

Question ID : 98958011075

Status : Answered

Chosen Option : 4

Q.3  
5 If sign ' $\times$ ' is interchanged with ' $+$ ' and number '3' is interchanged with '2', then which of the following equations would be correct?

- Ans
- 1.  $3 \div 2 \times 2 + 2 - 3 = 1$
  - 2.  $3 \times 2 \div 2 + 2 - 3 = 3$
  - 3.  $2 \times 3 - 2 + 2 \div 3 = 0$
  - 4.  $2 \times 3 \div 2 + 2 - 3 = 0$

Question ID : 98958011078

Status : Answered

Chosen Option : 1

Q.3  
6 Three of the following four number-pairs are alike in a certain way and one is different. Find the odd one out.

- Ans
- 1. 7, 12
  - 2. 41, 2
  - 3. 21, 4
  - 4. 14, 6

Question ID : 98958011073

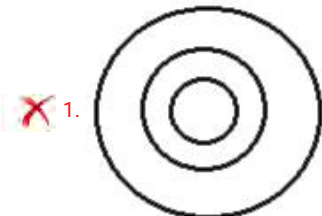
Status : Not Answered

Chosen Option : --

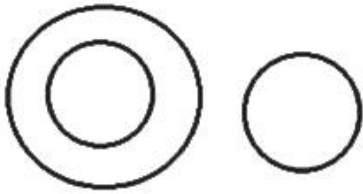
Q.3  
7 Choose the Venn diagram from the given options that best represents the relationship amongst the following classes:

Inert Gases, Chlorine, Helium

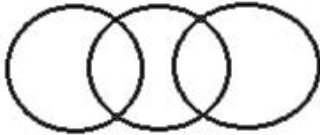
Ans



✓ 2.



✗ 3.



✗ 4.



Question ID : 98958011091

Status : Answered

Chosen Option : 2

Q.3 Select the set of numbers that is similar to the following set of numbers.

(3, 5, 7)

Ans ✗ 1. (29, 35, 41)

✗ 2. (19, 21, 31)

✓ 3. (23, 29, 31)

✗ 4. (11, 13, 19)

Question ID : 98958011074

Status : Not Answered

Chosen Option : --

Q.3 Three of the following four number-pairs are alike in a certain way and one is different. Find the odd one out.

Ans ✗ 1. 119 : 153

✗ 2. 63 : 81

✓ 3. 93 : 117

✗ 4. 133 : 171

Question ID : 98958011072

Status : Not Answered

Chosen Option : --

Q.4 Which two signs should be interchanged to make the given equation correct?

$$14 + 4 \div 5 - 18 \times 2 = 25$$

Ans ✗ 1.  $\times$  and  $-$

✗ 2.  $\div$  and  $+$

✗ 3.  $\times$  and  $+$



✓ 4. ÷ and ×

Question ID : 98958011076

Status : Answered

Chosen Option : 4

Q.4 Select the correct alternative to indicate the arrangement of the following words in a logical and meaningful order.

1

1. Chapter
2. Word
3. Letter
4. Phrase
5. Paragraph
6. Sentence

Ans ✗ 1. 3, 2, 6, 4, 5, 1

✗ 2. 2, 3, 4, 1, 6, 5

✗ 3. 3, 2, 4, 6, 1, 5

✓ 4. 3, 2, 4, 6, 5, 1

Question ID : 98958011047

Status : Answered

Chosen Option : 4

Q.4 Select the option that is related to the fourth term in the same way as the first term is related to the second term.

2

CFZ : HIU :: \_\_\_\_\_ : JLS

Ans ✗ 1. EIY

✗ 2. EHW

✗ 3. FHX

✓ 4. EIX

Question ID : 98958011057

Status : Answered

Chosen Option : 4

Q.4 Three of the following four words are alike in a certain way and one is different. Find the odd one out.

3

Ans ✗ 1. Lawyer

✗ 2. Engineer

✗ 3. Doctor

✓ 4. Education

Question ID : 98958011050

Status : Answered

Chosen Option : 4

Q.4 Three of the following four words are alike in a certain way and one is different. Find the odd one out.

4

Ans ✗ 1. Mend : Repair

✓ 2. Sink : Float

✗ 3. Vacant : Empty

4. Flaw : Defect

Question ID : 98958011051  
Status : Answered  
Chosen Option : 2

Q.4 Select the option that is related to the third term in the same way as the second term is related to the first term.

5

2264 : 7241 : : 3129 : \_\_\_\_\_

- Ans  1. 9521  
 2. 6342  
 3. 7132  
 4. 2572

Question ID : 98958011067  
Status : Not Answered  
Chosen Option : --

Q.4 Three of the following four number-pairs are alike in a certain way and one is different. Find the odd one out.

6

- Ans  1. 10 : 25  
 2. 8 : 20  
 3. 18 : 81  
 4. 12 : 36

Question ID : 98958011071  
Status : Answered  
Chosen Option : 3

Q.4 Which letter will replace the question mark (?) in the following series?

7

Z, X, V, T, R, ?

- Ans  1. Q  
 2. P  
 3. S  
 4. O

Question ID : 98958011044  
Status : Answered  
Chosen Option : 2

Q.4 Choose the Venn diagram from the given options that best represents the relationship amongst the following classes:

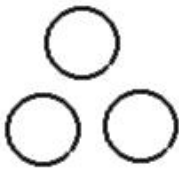
8

Vienna, Europe, New Zealand

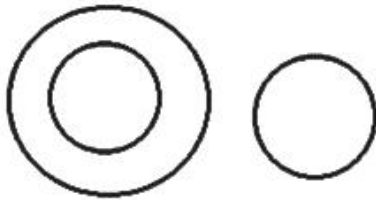
Ans



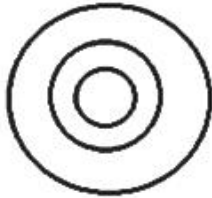
2.



3.



4.

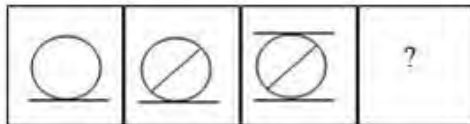


Question ID : 98958011092

Status : Answered

Chosen Option : 3

Q.4 Select the figure that will come next in the following figure series.

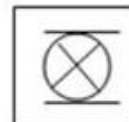


Ans

1.



2.



3.



4.



Question ID : 98958011081

Status : Not Answered

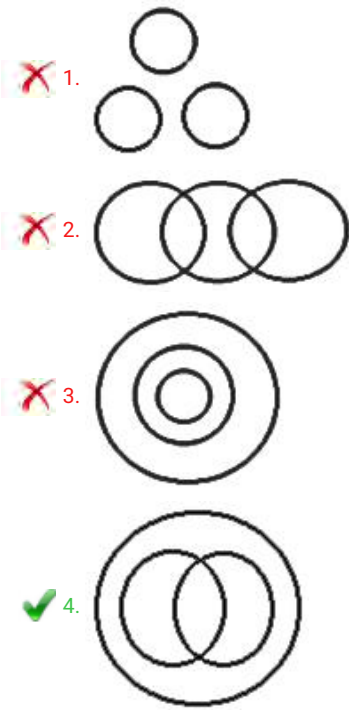
Chosen Option : --

Q.5 Choose the Venn diagram from the given options that best represents the relationship amongst the following classes:

0

Mothers, Doctors, Homo Sapiens

Ans



Question ID : 98958011093  
Status : Answered  
Chosen Option : 4

Q.5  
1 Identify the largest muscle in the human body.

- Ans
- 1. Latissimus Dorsi
  - 2. Iliopsoas
  - 3. Gluteus Maximus
  - 4. Sartorius

Question ID : 98958010989  
Status : Answered  
Chosen Option : 4

Q.5  
2 The Presidential order was issued under \_\_\_\_\_ of the Constitution of India which allows the President to make certain "exceptions and modification" to the Constitution for the benefit of 'State subjects' of Jammu and Kashmir.

- Ans
- 1. Article 340 (1) (d)
  - 2. Article 304 (1) (d)
  - 3. Article 370 (1) (d)
  - 4. Article 314 (1) (d)

Question ID : 98958010979  
Status : Answered  
Chosen Option : 3

Q.5  
3 The fifth Sikh Guru compiled Adi Granth, the first official edition of the Sikh scripture.

- Ans
- 1. Guru Arjan Dev

- 2. Guru Amar Das
- 3. Guru Ram Das
- 4. Guru Gobind Singh

Question ID : 98958010982  
Status : Answered  
Chosen Option : 3

Q.5 \_\_\_\_\_ Tiger reserve in Karnataka is home to the largest number of Asian elephants in the world.  
4

- Ans
- 1. Ranthambore Tiger Project
  - 2. Nagarhole Tiger Reserve
  - 3. Bandhagarh National Park
  - 4. Kanha National Park

Question ID : 98958010987  
Status : Answered  
Chosen Option : 1

Q.5 Article 35A was incorporated into the Indian Constitution based on the \_\_\_\_\_ Delhi agreement entered between then  
5 Prime Minister Jawaharlal Nehru and the then Prime Minister of Jammu and Kashmir Sheikh Abdullah.

- Ans
- 1. 1955
  - 2. 1952
  - 3. 1960
  - 4. 1956

Question ID : 98958010975  
Status : Answered  
Chosen Option : 4

Q.5 The 'Global Talent Competitive Index' prepared by the \_\_\_\_\_ in partnership with Tata Communications and Adecco  
6 Group was released on the first day of the World Economic Forum Annual Meeting 2019.

- Ans
- 1. SGT Business School
  - 2. GURU GOBIND Business School
  - 3. INSEAD Business school
  - 4. JAMNALAL Business School

Question ID : 98958010952  
Status : Answered  
Chosen Option : 3

Q.5 In Carbon dating, a weak C-14 molecule deteriorates and transforms into \_\_\_\_\_.  
7

- Ans
- 1. C-16
  - 2. N-14
  - 3. C-11
  - 4. N-12

Question ID : 98958010970

Status : **Answered**  
Chosen Option : 1

Q.5  
8 Which amongst the following is NOT the member of the BASIC group?

- Ans
- 1. Australia
  - 2. South Africa
  - 3. India
  - 4. Brazil

Question ID : **98958010968**  
Status : **Answered**  
Chosen Option : 2

Q.5  
9 Which of the following is known as the study of earthquakes?

- Ans
- 1. Histology
  - 2. Lithology
  - 3. Seismology
  - 4. Semiology

Question ID : **98958010990**  
Status : **Answered**  
Chosen Option : 3

Q.6  
0 Identify the SI unit of electrical resistance.

- Ans
- 1. Ampere
  - 2. Watt
  - 3. Coulomb
  - 4. Ohm

Question ID : **98958010980**  
Status : **Answered**  
Chosen Option : 4

Q.6  
1 India won South Asian 2018 Football Federation (SAFF) Under-15 Women's Championship in \_\_\_\_\_.

- Ans
- 1. Jakarta, Indonesia
  - 2. Hangzhou, China
  - 3. Thimphu, Bhutan
  - 4. Nanjing, China

Question ID : **98958010986**  
Status : **Answered**  
Chosen Option : 1

Q.6  
2 Poor vision in human can be due to the deficiency of \_\_\_\_\_



- Ans  1. Vitamin A  
 2. Vitamin D  
 3. Iodine  
 4. Iron

Question ID : 98958010946  
Status : Answered  
Chosen Option : 1

Q.6  
3 Name the annual fair of Rajasthan at which camel trading is a major event?

- Ans  1. Sonepur Mela  
 2. Maru Mela  
 3. Suraj Kund Mela  
 4. Pushkar Mela

Question ID : 98958010944  
Status : Answered  
Chosen Option : 3

Q.6  
4 From India, \_\_\_\_\_ won gold in the Men's Triple Jump event at Asian Games 2018 organized in Jakarta-Palembang, Indonesia.

- Ans  1. Renjith Maheshwari  
 2. Arpinder Singh  
 3. Vijay Kumar  
 4. Manjit Singh

Question ID : 98958010971  
Status : Answered  
Chosen Option : 4

Q.6  
5 In July 2018, \_\_\_\_\_ became the second Indian mountaineer after Malli Mastan Babu to climb Mount Ojos del Salado, the highest volcano in the world.

- Ans  1. Mohan Singh Kohli  
 2. Premlata Agrawal  
 3. Satyarup Siddhanta  
 4. Aruna Sinha

Question ID : 98958010977  
Status : Answered  
Chosen Option : 4

Q.6  
6 In January 2019, the Supreme Court gave its nod to the on-going projects under India Nepal Buddhist Tour Plan, which connects four holy places by all-weather roads. Which of the following is NOT one of them.

- Ans  1. Badrinath  
 2. Kedarnath

- 3. Yamunotri
- 4. Sabarimala

Question ID : 98958010956  
Status : Answered  
Chosen Option : 3

Q.6  
7 Which vitamin is prepared by our body in presence of sunlight?

- Ans
- 1. Vitamin B
  - 2. Vitamin A
  - 3. Vitamin D
  - 4. Vitamin C

Question ID : 98958010967  
Status : Answered  
Chosen Option : 3

Q.6  
8 Which is the largest freshwater lake in India?

- Ans
- 1. Pangong Tso
  - 2. Wular Lake
  - 3. Udai Sagar
  - 4. Chilika Lake

Question ID : 98958010985  
Status : Answered  
Chosen Option : 2

Q.6  
9 Who was the first Indian to ski to the North pole?

- Ans
- 1. Sanjay Thapar
  - 2. Ajeet Bajaj
  - 3. Arun Nayyar
  - 4. Neal Paramjeet

Question ID : 98958010972  
Status : Answered  
Chosen Option : 1

Q.7  
0 \_\_\_\_\_ temple in Karnataka is the most extravagant architectural showpiece of Hampi.

- Ans
- 1. Vittala
  - 2. Akshardham
  - 3. Meenakshi
  - 4. Lingaraj

Question ID : 98958010966

Status : **Answered**  
Chosen Option : **3**

Q.7 Article 35A was incorporated into the Constitution of India in \_\_\_\_\_ by an order of the then President Rajendra Prasad  
1 on the advice of the Jawaharlal Nehru Cabinet.

- Ans
- 1. 1959
  - 2. 1950
  - 3. 1954
  - 4. 1956

Question ID : **98958010984**  
Status : **Answered**  
Chosen Option : **4**

Q.7 Which of the following is the vector of Malaria?  
2

- Ans
- 1. Aedes Mosquito
  - 2. Fleas
  - 3. Anopheles Mosquito
  - 4. Sand Fly

Question ID : **98958010958**  
Status : **Answered**  
Chosen Option : **3**

Q.7 In January 2019, the \_\_\_\_\_ cargo craft departed from the International Space Station after its successful mission to  
3 deliver scientific equipment and other supplies.

- Ans
- 1. SpaceX
  - 2. SpaceY
  - 3. SpaceM
  - 4. SpaceZ

Question ID : **98958010955**  
Status : **Answered**  
Chosen Option : **2**

Q.7 Which ruler constructed the highest and biggest gateway of Victory, Buland Darwaza?  
4

- Ans
- 1. Aurangzeb
  - 2. Akbar
  - 3. Jahangir
  - 4. Mohammed Ghori

Question ID : **98958010961**  
Status : **Answered**  
Chosen Option : **4**

Q.7 Jahangir, the \_\_\_\_\_ Mughal emperor ruled India from 1605 until his death in 1627.  
5

- Ans
- 1. fifth
  - 2. third
  - 3. second
  - 4. fourth

Question ID : 98958010951  
Status : Answered  
Chosen Option : 4

Q.7  
6 India won \_\_\_\_\_ medals at the Asian Games 2018 held in Indonesia.

- Ans
- 1. 69
  - 2. 39
  - 3. 49
  - 4. 29

Question ID : 98958010969  
Status : Answered  
Chosen Option : 4

Q.7  
7 From which city did Jeevan Rekha, the world's first hospital train start its journey on July 16, 1991?

- Ans
- 1. Bangalore
  - 2. New Delhi
  - 3. Bombay
  - 4. Varanasi

Question ID : 98958010959  
Status : Answered  
Chosen Option : 1

Q.7  
8 Prime Minister Narendra Modi released a commemorative coin and stamp dedicated to \_\_\_\_\_ to mark his 350th birth anniversary on 5th January 2019.

- Ans
- 1. Guru Amar Das
  - 2. Guru Arjan Dev
  - 3. Guru Ram Das
  - 4. Guru Gobind Singh

Question ID : 98958010947  
Status : Answered  
Chosen Option : 4

Q.7  
9 In which city of India was the first ever Formula One race held?

- Ans
- 1. Mumbai
  - 2. Greater Noida
  - 3. Faridabad
  - 4. Pune

Question ID : 98958010992  
Status : Answered  
Chosen Option : 4

Q.8  
0 As of February 2019, who is the Governor of Tamil Nadu?

- Ans
- 1. B.D. Mishra
  - 2. Jagdish Mukhi
  - 3. O. P. Kohli
  - 4. Banwarilal Purohit

Question ID : 98958010949  
Status : Answered  
Chosen Option : 4

Q.8  
1 Bharat Ratna and Padma Vibhushan Awards in India were instituted in the year \_\_\_\_\_.

- Ans
- 1. 1958
  - 2. 1968
  - 3. 1964
  - 4. 1954

Question ID : 98958010963  
Status : Answered  
Chosen Option : 3

Q.8  
2 Guru Gobind Singh commanded Sikhs to wear five items all the time. Which of the following is NOT one of these five items?

- Ans
- 1. Kesh
  - 2. Kila
  - 3. Kara
  - 4. Kangha

Question ID : 98958010965  
Status : Answered  
Chosen Option : 4

Q.8  
3 The Sepoy Mutiny of 1857 took place when \_\_\_\_\_ was the Governor General of India.

- Ans
- 1. Lord Bentinck
  - 2. Lord Wellesley
  - 3. Lord Canning
  - 4. Lord Dalhousie

Question ID : 98958010993  
Status : Answered  
Chosen Option : 1

Q.8

4 Which of the following instruments measures infra-red radiation?

- Ans
- 1. Pyrheliometer
  - 2. Cathetometer
  - 3. Bolometer
  - 4. Phenograph

Question ID : 98958010978  
Status : Answered  
Chosen Option : 2

Q.8  
5 The total forest cover in India as per the 2011 census is \_\_\_\_\_.

- Ans
- 1. 22.07%
  - 2. 21.05%
  - 3. 17.80%
  - 4. 23.42%

Question ID : 98958010991  
Status : Answered  
Chosen Option : 4

Q.8  
6 When was NABARD established?

- Ans
- 1. 1986
  - 2. 1980
  - 3. 1982
  - 4. 1984

Question ID : 98958010954  
Status : Answered  
Chosen Option : 3

Q.8  
7 Who is the author of the book, 'The Google Story'?

- Ans
- 1. Frederick Forsyth
  - 2. David A. Vise
  - 3. Shobha Dey
  - 4. Vikram Seth

Question ID : 98958010964  
Status : Answered  
Chosen Option : 2

Q.8  
8 A minor planet is named after which of the following legends?

- Ans
- 1. Viswanathan Anand
  - 2. Milkha Singh
  - 3. A. R. Rehman



4. Sachin Tendulkar

Question ID : 98958010950  
Status : Answered  
Chosen Option : 2

Q.8 With which of the following folk dance, India has made it's entry in the Guinness Book of World Records in the year 2015?

9

- Ans  1. Nati  
 2. Bihu  
 3. Bhangra  
 4. Garba

Question ID : 98958010962  
Status : Answered  
Chosen Option : 4

Q.9 Where was the Sanskriti Kumbh, a 29 days cultural extravaganza, held in January 2019?

0

- Ans  1. Chandrashila  
 2. Sonprayag  
 3. Agastyamuni  
 4. Prayagraj

Question ID : 98958010957  
Status : Answered  
Chosen Option : 4

Q.9 The first woman Secretary general of SAARC is from which country?

1

- Ans  1. Bhutan  
 2. India  
 3. Sri Lanka  
 4. Maldives

Question ID : 98958010945  
Status : Answered  
Chosen Option : 3

Q.9  $ZnSO_4 \cdot 7H_2O$  is the chemical formula of which substance?

2

- Ans  1. White Vitriol  
 2. Bleaching powder  
 3. Blue Vitriol  
 4. Green Vitriol

Question ID : 98958010981  
Status : Answered  
Chosen Option : 4

Q.9  
3 Guru Gobind Singh was the \_\_\_\_\_ Sikh Guru.

- Ans
- 1. eighth
  - 2. fifth
  - 3. tenth
  - 4. ninth

Question ID : 98958010948  
Status : Answered  
Chosen Option : 3

Q.9  
4 In January 2019, Indian Space Research Organisation launched a special programme for school children named \_\_\_\_\_ to inculcate and nurture space research fervour in young minds.

- Ans
- 1. Young Scientist programme
  - 2. Young Thoughts programme
  - 3. Young Minds programme
  - 4. Young Blood programme

Question ID : 98958010974  
Status : Answered  
Chosen Option : 3

Q.9  
5 Article \_\_\_\_\_ of the Constitution of India provides special rights and privileges to permanent residents of Jammu and Kashmir.

- Ans
- 1. 34A
  - 2. 32A
  - 3. 35A
  - 4. 31A

Question ID : 98958010973  
Status : Answered  
Chosen Option : 3

Q.9  
6 A petition has been filed by NGO \_\_\_\_\_ challenging the constitutional validity of both, Article 35A and Article 370.

- Ans
- 1. We The Indians
  - 2. We The Citizens
  - 3. We The Opposers
  - 4. We The Challengers

Question ID : 98958010983  
Status : Answered  
Chosen Option : 2

Q.9  
7 The Imperial Bank of India was renamed as \_\_\_\_\_ in 1955.

- Ans
- 1. Punjab National Bank

- 2. The State Bank of India
- 3. Central Bank of India
- 4. Allahabad Bank

Question ID : 98958010953  
Status : Answered  
Chosen Option : 3

Q.9  
8 Which of the following banks is NOT a public sector bank?

- Ans
- 1. Canara Bank
  - 2. State Bank of India
  - 3. Jammu and Kashmir Bank Ltd.
  - 4. IndusInd Bank

Question ID : 98958010960  
Status : Answered  
Chosen Option : 3

Q.9  
9 Which is the longest tributary of the river Indus?

- Ans
- 1. Beas
  - 2. Chenab
  - 3. Jhelum
  - 4. Sutlej

Question ID : 98958010976  
Status : Answered  
Chosen Option : 2

Q.1  
00 Which of the following metals is found in free state in nature?

- Ans
- 1. Copper
  - 2. Potassium
  - 3. Aluminium
  - 4. Sodium

Question ID : 98958010988  
Status : Answered  
Chosen Option : 2

Q.1  
01 One-fourth of a tank can be filled in 3 hours by pipe A and one-third of the same tank can be filled in 2 hours by pipe B.  
How long will it take for the tank to be filled if both the pipes are kept open?

- Ans
- 1. 2 h
  - 2.  $2\frac{1}{2}$  h
  - 3. 5 h
  - 4. 4 h

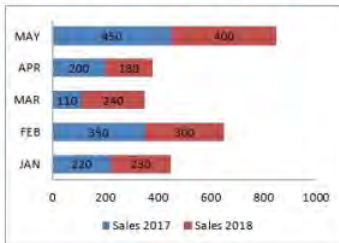
Question ID : 98958011216  
Status : Not Answered  
Chosen Option : --

Q.1  
02 The value of  $\frac{1}{3} \div \frac{5}{6} \times \frac{-5}{8}$  is equal to:

- Ans
- 1. 0
  - 2.  $\frac{1}{4}$
  - 3.  $\frac{-1}{4}$
  - 4. 1

Question ID : 98958011199  
Status : Answered  
Chosen Option : 3

Q.1  
03 The given bar chart shows the details of cycle sales by a company between January and May for years 2017 and 2018.



In the given bar-chart, which month sales show the maximum decrease in 2018 as compared to 2017?

- Ans
- 1. May
  - 2. February
  - 3. April
  - 4. January

Question ID : 98958011236  
Status : Answered  
Chosen Option : 1

Q.1  
04 The number 23474 is exactly divisible by:

- Ans
- 1. 2 and 4 only
  - 2. 2 and 11 only
  - 3. 2 and 3 only
  - 4. 2 only

Question ID : 98958011195  
Status : Answered  
Chosen Option : 2

Q.1  
05 A, borrowed ₹28,500 at 8% pa interest compounded annually. If ₹5,780 was paid at the end of first year, then the outstanding amount at the end of second year is:

- Ans  1. ₹27,000.00  
 2. ₹33,242.40  
 3. ₹30,780.00  
 4. ₹27,462.40

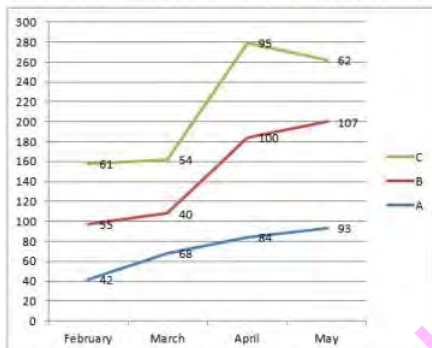
Question ID : 98958011212  
Status : Not Answered  
Chosen Option : --

Q.1  
06 A borrowed a loan from B at 8% simple interest for 2 years and repaid the loan with interest totaling ₹1,91,864. The amount of loan taken by A is:

- Ans  1. ₹1,66,540  
 2. ₹1,68,920  
 3. ₹1,65,400  
 4. ₹1,64,492

Question ID : 98958011211  
Status : Not Answered  
Chosen Option : --

Q.1  
07 The line graph shows electricity consumption (in units) for three households A, B and C for months February to May.



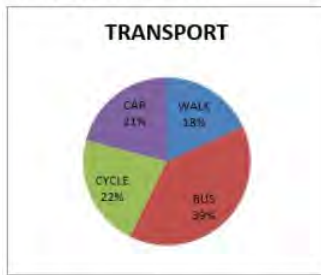
In the given line graph, the difference between the total electrical consumption between months of February and April is:

- Ans  1. 97  
 2. 121  
 3. 15  
 4. 74

Question ID : 98958011242  
Status : Answered  
Chosen Option : 2

Q.1  
08

The given pie-chart depicts the percentage of students coming to school using different modes of transport. Total number of students = 1300



In the given pie-chart, the difference between the number of students travel by bus or walk to the number of students travel by car or cycle.

- Ans  1. 182  
 2. 364  
 3. 142  
 4. 125

Question ID : 98958011239

Status : Answered

Chosen Option : 1

Q.1  
09 The length of diagonal of a square whose area is  $64 \text{ m}^2$  is:

- Ans  1.  $4\sqrt{2}\text{m}$   
 2.  $8\sqrt{2}\text{m}$   
 3. 8 m  
 4. 4 m

Question ID : 98958011219

Status : Answered

Chosen Option : 2

Q.1  
10 Three cubes with edges 6 cm each are joined end to end to form a cuboid. The total surface area of the cuboid is:

- Ans  1.  $720 \text{ cm}^2$   
 2.  $432 \text{ cm}^2$   
 3.  $504 \text{ cm}^2$   
 4.  $648 \text{ cm}^2$

Question ID : 98958011222

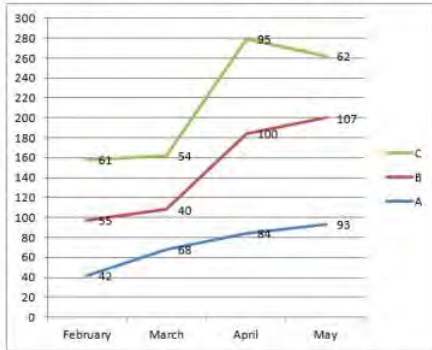
Status : Answered

Chosen Option : 3

Q.1  
11



The line graph shows electricity consumption (in units) for three households A, B and C for months February to May.



In the given line graph, the percentage increase in electricity consumption of 'B' between March and May is:

- Ans
- 1. 95%
  - 2. 7%
  - 3. 85%
  - 4. 98%

Question ID : 98958011241

Status : Not Answered

Chosen Option : --

Q.1 The single discount equivalent to two successive discounts of 12% and 8% is: (rounded off)

12

- Ans
- 1. 18%
  - 2. 19%
  - 3. 20%
  - 4. 17%

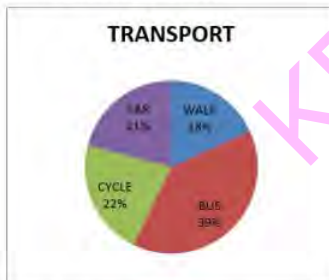
Question ID : 98958011204

Status : Answered

Chosen Option : 2

Q.1 The given pie-chart depicts the percentage of students coming to school using different modes of transport. Total

13 number of students = 1300



In the given pie-chart, the percentage difference between students coming by car or bus to coming by walking or cycling.

- Ans
- 1. 25%
  - 2. 30%
  - 3. 20%
  - 4. 15%

Question ID : 98958011240

Status : Answered

Q.1 The population of a town has increased by 5% at the end of the first year and decreased by 4% at the end of second year.

14 If the population at the end of second year was 55,12,248, then the population at the beginning of first year was:

- Ans
- 1. 55,72,950
  - 2. 54,68,500
  - 3. 53,00,420
  - 4. 56,23,012

Question ID : 98958011205

Status : Not Answered

Chosen Option : --

Q.1 If  $x - \frac{1}{x} = 4$ , then  $x^3 - \frac{1}{x^3}$  is equal to:

- 15
- Ans
- 1. 68
  - 2. 64
  - 3. 72
  - 4. 76

Question ID : 98958011225

Status : Answered

Chosen Option : 4

Q.1 A number which, when increased by 16% becomes 1914. The number is:

- 16
- Ans
- 1. 2220
  - 2. 1650
  - 3. 1780
  - 4. 2010

Question ID : 98958011206

Status : Answered

Chosen Option : 2

Q.1 The sum of all possible three digit numbers formed by digits 3, 0 and 7, using each digit only once is:

- 17
- Ans
- 1. 2220
  - 2. 1990
  - 3. 2110
  - 4. 2010

Question ID : 98958011200

Status : Answered

Chosen Option : 1

Q.1 A and B are at a distance of 1.7 km apart and they start running towards each other at a speed of 8 m/s and 9 m/s respectively. After how much time, will they meet each other?

- 18
- Ans
- 1. 1 minute 4 seconds

- 2. 1 minute 40 seconds
- 3. 14 seconds
- 4. 14 minutes

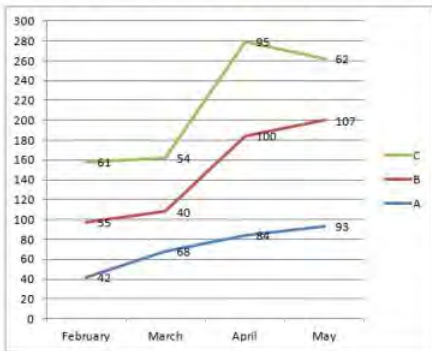
Question ID : 98958011217  
 Status : Answered  
 Chosen Option : 2

**Q.1** ABCD is a cyclic quadrilateral such that AB is a diameter of the circle circumscribing it and angle BAC = 50°. Then angle ADC is equal to:

- Ans**
- 1. 130°
  - 2. 60°
  - 3. 140°
  - 4. 150°

Question ID : 98958011227  
 Status : Answered  
 Chosen Option : 3

**Q.1** The line graph shows electricity consumption (in units) for three households A, B and C for months February to May.



If the per unit rate chart is:

Units	Rate per unit(₹)
First 50	2.40
Next 50	3.50
Above 100	5.50

In the given line graph, the electricity charges collected from all (A, B and C) for the month of February is:

- Ans**
- 1. ₹348.00
  - 2. ₹506.8
  - 3. ₹474.20
  - 4. ₹396.80

Question ID : 98958011243  
 Status : Answered  
 Chosen Option : 2

**Q.1** The area of each square of a chessboard having 64 equal squares is 4 cm<sup>2</sup>. If there is a border on all the sides of the chessboard of 2 cm, then the perimeter of the chessboard is:

- Ans**
- 1. 256 cm
  - 2. 70 cm

3. 128 cm

4. 80 cm

Question ID : 98958011223

Status : Answered

Chosen Option : 1

Q.1 22 Which of the following statement is true?

Ans  1. HCF+LCM of two numbers = Product of the two numbers

2. LCM of two natural numbers is divisible by their HCF.

3.

Two prime numbers are co-prime numbers if their LCM is 1.

4.

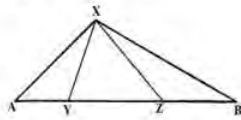
HCF of two numbers is the smallest common divisor of both numbers.

Question ID : 98958011196

Status : Answered

Chosen Option : 1

Q.1 23 In the given figure, XYZ is an equilateral triangle.  $\angle XAY=40^\circ$ ,  $\angle XBZ=30^\circ$  then  $\angle AXB$  is equal to:



Ans  1.  $90^\circ$

2.  $110^\circ$

3.  $60^\circ$

4.  $80^\circ$

Question ID : 98958011229

Status : Answered

Chosen Option : 2

Q.1 24 The average age of a cricket team of eleven players is 27 years. If two more players are included in the team the average becomes 26 years, then the average age (in years) of the two included players is:

Ans  1. 20.5

2. 24.5

3. 26

4. 27

Question ID : 98958011201

Status : Answered

Chosen Option : 1

Q.1 25 If  $x^2 + \frac{1}{x^2} = 11$ , then  $x - \frac{1}{x}$  is equal to:

Ans

- 1. 5
- 2. 2
- 3. 4
- 4. 3

Question ID : 98958011224  
 Status : Answered  
 Chosen Option : 4

Q.1 A, B and C are partners. They share profits in the ratio of 5 : 3 : 6. If A earns ₹1,92,380 as his share of profit, then the share of C is:

- Ans  1. ₹2,30,856
- 2. ₹1,60,317
  - 3. ₹1,15,428
  - 4. ₹82,449

Question ID : 98958011210  
 Status : Answered  
 Chosen Option : 1

Q.1 The volume of a solid cylinder with height 6 cm is  $231 \text{ cm}^3$ . The radius of the cylinder is:

- Ans  1. 2.1 cm
- 2. 35 cm
  - 3. 3.5 cm
  - 4. 21 cm

Question ID : 98958011220  
 Status : Answered  
 Chosen Option : 3

Q.1 The given bar chart shows the details of cycle sales by a company between January and May for years 2017 and 2018.



In the given bar-chart, which month sale shows the maximum increase in 2018 as against 2017?

- Ans  1. March
- 2. January
  - 3. May
  - 4. April

Question ID : 98958011235  
 Status : Answered  
 Chosen Option : 1

Q.1  
29 If  $ab + bc + ca = 8$  and  $a + b + c = 12$  then  $(a^2 + b^2 + c^2)$  is equal to:

- Ans
- 1. 160
  - 2. 144
  - 3. 128
  - 4. 134

Question ID : 98958011226  
Status : Answered  
Chosen Option : 3

Q.1  
30 From the top of 120 m high lighthouse, the angle of depression of two ships on opposite side of the base of the lighthouse is  $30^\circ$  and  $60^\circ$ . What is the distance between the ships? (rounded off)

- Ans
- 1. 177 m
  - 2. 127 m
  - 3. 327 m
  - 4. 277 m

Question ID : 98958011234  
Status : Answered  
Chosen Option : 4

Q.1  
31 The string of a kite is 30 m long and it makes an angle  $60^\circ$  with the horizontal. The height of the kite above the ground is:

- Ans
- 1.  $15\sqrt{3}$  m
  - 2.  $10\sqrt{3}$  m
  - 3. 7.5 m
  - 4. 15 m

Question ID : 98958011233  
Status : Answered  
Chosen Option : 1

Q.1  
32 6 men or 5 women earn ₹14,820 in two days. How much will 4 women and 6 men earn in one day?

- Ans
- 1. ₹27,664
  - 2. ₹26,676
  - 3. ₹13,338
  - 4. ₹13,832

Question ID : 98958011214  
Status : Not Answered  
Chosen Option : --

Q.1  
33 A trader marks the products 25% above the cost price and allows a discount of 15%. If the cost price is ₹ 2,080, then the selling price is:

- Ans
- 1. ₹ 2,210



2. ₹ 2,392

3. ₹ 2,600

4. ₹ 1,809

Question ID : 98958011203  
Status : Not Answered  
Chosen Option : --

Q.1  
34 The volume of a conical tent is  $924 \text{ m}^3$  and its base area is  $154 \text{ m}^2$ . The height of the tent is:

Ans  1. 18 m

2. 6 m

3. 24 m

4. 12 m

Question ID : 98958011221  
Status : Answered  
Chosen Option : 1

Q.1  
35 To what power -3 should be raised to get -2187?

Ans  1. -7

2. -5

3. 5

4. 7

Question ID : 98958011194  
Status : Answered  
Chosen Option : 4

Q.1  
36 If  $\cos \theta = \frac{1}{\sqrt{10}}$ , then  $\tan \theta$  is equal to:

Ans  1.  $\frac{1}{3}$

2. 3

3.  $\frac{1}{\sqrt{3}}$

4.  $\sqrt{3}$

Question ID : 98958011232  
Status : Answered  
Chosen Option : 2

Q.1  
37 Triangle PQR is a right-angled at Q. If  $PQ=6 \text{ cm}$ ,  $PR=10 \text{ cm}$ , then QR is equal to:

Ans  1. 9 cm

2. 8 cm

3. 5 cm

4. 7 cm

Question ID : 98958011230

Status : Answered

Chosen Option : 2

Q.1  
38 The average of all prime numbers between 10 and 25 is:

Ans  1. 14.7

2. 15.3

3. 18.67

4. 16.6

Question ID : 98958011202

Status : Answered

Chosen Option : 4

Q.1  
39 A manufacturer sells the product to a wholesaler at 6% profit, the wholesaler sells the product to a retailer at 8% profit and the retailer sells the product to his customer at 10% profit. The price paid by the customer is ₹31,482. The cost of the product to the manufacturer is:

Ans  1. ₹26,524

2. ₹25,000

3. ₹26,980

4. ₹28,306

Question ID : 98958011208

Status : Not Answered

Chosen Option : --

Q.1  
40 The HCF and LCM of two numbers is 6 and 5040 respectively. If one of the numbers is 210, then the other number is:

Ans  1. 630

2. 144

3. 256

4. 30

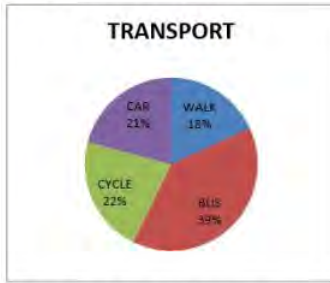
Question ID : 98958011197

Status : Answered

Chosen Option : 2

Q.1  
41

The given pie-chart depicts the percentage of students coming to school using different modes of transport. Total number of students = 1300



In the given pie-chart, if 234 students used to walk, then how many come by bus?

- Ans
- 1. 286
  - 2. 432
  - 3. 273
  - 4. 507

Question ID : 98958011238

Status : Answered

Chosen Option : 4

Q.1 A can do a work in 12 days while B can do same work in 18 days. How long (in days) will it take if they do the work together?

- 42
- Ans
- 1.  $6\frac{1}{5}$
  - 2.  $6\frac{2}{3}$
  - 3.  $5\frac{3}{4}$
  - 4.  $7\frac{1}{5}$

Question ID : 98958011213

Status : Answered

Chosen Option : 4

Q.1 The given bar chart shows the details of cycle sales by a company between January and May for years 2017 and 2018.



In the given bar-chart, what is the total increase or decrease in percentage sale in 2018?

- Ans
- 1. 3% decrease
  - 2. 3% increase
  - 3. 1.5% decrease
  - 4. 1.5% increase

Question ID : 98958011237

Status : Not Answered

Chosen Option : --

Q.1  
44 If  $2\sin 3\theta = 1$ , then the value of  $\theta$  is:

Ans  1.  $20^\circ$

2.  $10^\circ$

3.  $45^\circ$

4.  $30^\circ$

Question ID : 98958011231

Status : Answered

Chosen Option : 2

Q.1 PA and PB are two tangents to a circle with centre O, from a point P outside the circle. A and B are points on the circle.

45 If  $\angle OAB = 20^\circ$ , then  $\angle APB$  is equal to:

Ans  1.  $20^\circ$

2.  $25^\circ$

3.  $40^\circ$

4.  $50^\circ$

Question ID : 98958011228

Status : Answered

Chosen Option : 3

Q.1 A goes to a mall from his house on a cycle at 8 km/h and comes back to his house on a cycle at 6 km/h. If he takes

46 1 hour 10 minutes in all, what is the distance between his house and the mall?

Ans  1. 8 km

2. 4 km

3. 5 km

4. 6 km

Question ID : 98958011218

Status : Not Answered

Chosen Option : --

Q.1 A tank can be filled by pipe A in 5 hours and emptied by pipe B in 8 hours respectively. How much time will it take for

47 the tank to be half full?

Ans  1.  $12\frac{1}{3}$  h

2.  $3\frac{1}{3}$  h

3.  $8\frac{2}{3}$  h

4.  $6\frac{2}{3}$  h

Question ID : 98958011215

Status : Not Answered

Chosen Option : --

Q.1  
48 The value of  $3 \times 3 - [6 - \{12 + 15 \div (7 - 2)\}]$  is equal to:

- Ans
- 1. 18
  - 2. 0
  - 3. 15
  - 4. -15

Question ID : 98958011198  
Status : Answered  
Chosen Option : 1

Q.1  
49 An alloy contains 32% copper, 24% nickel and rest zinc. How much zinc is present in 12 kg of the alloy?

- Ans
- 1. 672 gm
  - 2. 6.72 kg
  - 3. 5.28 kg
  - 4. 528 gm

Question ID : 98958011209  
Status : Not Answered  
Chosen Option : --

Q.1  
50 The ages of A and B are in the ratio 5 : 7. Five years ago, their ages were in the ratio 5 : 8. The respective present ages (in years) are:

- Ans
- 1. 20, 28
  - 2. 15, 21
  - 3. 25, 40
  - 4. 10, 14

Question ID : 98958011207  
Status : Not Answered  
Chosen Option : --

Q.1  
51 Select the synonym of the given word.

DRAG

- Ans
- 1. push
  - 2. lift
  - 3. crack
  - 4. pull

Question ID : 98958011367  
Status : Answered  
Chosen Option : 4

Q.1  
52

Identify the segment in the sentence which contains the grammatical error.

Scarcely she had heard the news when she fainted.

- Ans
- 1. she fainted.
  - 2. Scarcely she had
  - 3. when
  - 4. heard the news

Question ID : 98958011348  
Status : Answered  
Chosen Option : 2

Q.1 53 Select the most appropriate option to substitute the underlined segment in the given sentence. If there is no need to substitute it, select No improvement.

Can you go and ask from the cook if the tea is ready?

- Ans
- 1. ask the cook if the tea
  - 2. No improvement
  - 3. ask from the cook when the tea
  - 4. ask of the cook if the tea

Question ID : 98958011349  
Status : Answered  
Chosen Option : 1

Q.1 54 Select the antonym of the given word.

GRIM

- Ans
- 1. severe
  - 2. harsh
  - 3. pleasant
  - 4. gloomy

Question ID : 98958011370  
Status : Answered  
Chosen Option : 3

Q.1 55 Select the most appropriate option to substitute the underlined segment in the given sentence. If there is no need to substitute it, select No improvement.

Last week he promised that he would have come today, but he hasn't arrived yet.

- Ans
- 1. that he would come
  - 2. that he will have come
  - 3. that he will be coming
  - 4. No improvement.

Question ID : 98958011353  
Status : Answered  
Chosen Option : 3



Q.1 Select the most appropriate word to fill in the blank.

56

Last year there was an increase \_\_\_\_\_ the number of road accidents on the Eastern Expressway.

- Ans
- 1. in
  - 2. at
  - 3. to
  - 4. with

Question ID : 98958011355

Status : Answered

Chosen Option : 1

Q.1 Select the most appropriate option to substitute the underlined segment in the given sentence. If there is no need to substitute it, select No improvement.

57

The money collected by the students of this school was deposited in the Prime Minister's fund.

- Ans
- 1. by the students of this schools
  - 2. by the students at this school
  - 3. No improvement.
  - 4. from the student from this school

Question ID : 98958011352

Status : Answered

Chosen Option : 3

Q.1 Select the most appropriate meaning of the given idiom.

58

a sea change

- Ans
- 1. a fast change
  - 2. a radical change
  - 3. a nominal change
  - 4. a slow change

Question ID : 98958011375

Status : Answered

Chosen Option : 2

Q.1 Select the synonym of the given word.

59

TREAD

- Ans
- 1. walk
  - 2. run
  - 3. climb
  - 4. follow

Question ID : 98958011368

Status : Answered

Chosen Option : 3

Q.1  
60 Select the most appropriate meaning of the given idiom.

A stone's throw

- Ans  1. a short distance  
 2. an easy task  
 3. a faraway place  
 4. a memorable place

Question ID : 98958011378  
Status : Answered  
Chosen Option : 1

Q.1  
61 Select the wrongly spelt word.

- Ans  1. marshal  
 2. magnifisent  
 3. masculine  
 4. matchless

Question ID : 98958011386  
Status : Answered  
Chosen Option : 2

Q.1  
62 Select the wrongly spelt word.

- Ans  1. expertise  
 2. explanation  
 3. experiment  
 4. explained

Question ID : 98958011389  
Status : Answered  
Chosen Option : 2

Q.1  
63 Select the most appropriate meaning of the given idiom.

a lot on your plate

- Ans  1. having a large meal  
 2. having many responsibilities  
 3. having something which causes envy  
 4. having wealth in abundance

Question ID : 98958011379  
Status : Answered  
Chosen Option : 2

Q.1  
64 Select the most appropriate word for the given group of words.

A thing that motivates or encourages someone to do something

- Ans
- 1. incentive
  - 2. salary
  - 3. allowance
  - 4. remuneration

Question ID : 98958011381  
Status : Answered  
Chosen Option : 1

Q.1  
65 Select the wrongly spelt word.

- Ans
- 1. innocent
  - 2. inflammable
  - 3. installation
  - 4. insoluble

Question ID : 98958011388  
Status : Answered  
Chosen Option : 2

Q.1  
66 Select the synonym of the given word.

PROFESS

- Ans
- 1. teach
  - 2. lead
  - 3. predict
  - 4. admit

Question ID : 98958011369  
Status : Answered  
Chosen Option : 1

Q.1  
67 Select the synonym of the given word.

DAMSEL

- Ans
- 1. witch
  - 2. spinster
  - 3. hag
  - 4. maiden

Question ID : 98958011366  
Status : Answered  
Chosen Option : 2

Q.1  
68 Select the antonym of the given word.

CONSTANT

- Ans
- 1. varying
  - 2. perpetual
  - 3. regular
  - 4. uninterrupted

Question ID : 98958011372  
Status : Answered  
Chosen Option : 1

Q.1  
69 Select the wrongly spelt word.

- Ans
- 1. luggage
  - 2. ludicrous
  - 3. luminous
  - 4. luxurious

Question ID : 98958011387  
Status : Answered  
Chosen Option : 2

Q.1  
70 Select the antonym of the given word.

VISIONARY

- Ans
- 1. pragmatic
  - 2. imaginative
  - 3. creative
  - 4. futuristic

Question ID : 98958011374  
Status : Answered  
Chosen Option : 1

Q.1  
71 Select the most appropriate word to fill in the blank.

It is difficult for him to \_\_\_\_\_ all the comforts to his family in this small income.

- Ans
- 1. providing
  - 2. provided
  - 3. provides
  - 4. provide

Question ID : 98958011358  
Status : Answered  
Chosen Option : 4

Q.1  
72 Select the most appropriate word for the given group of words.

irrational fear of closed or confined places

- Ans
- 1. hydrophobia
  - 2. insomnia
  - 3. kleptomania
  - 4. claustrophobia

Question ID : 98958011382  
Status : Answered  
Chosen Option : 4

Q.1  
73 Select the most appropriate meaning of the given idiom.

a safe pair of hands

- Ans
- 1. a person who does many jobs
  - 2. a happy person
  - 3. a person who guards someone
  - 4. a reliable person

Question ID : 98958011376  
Status : Answered  
Chosen Option : 4

Q.1  
74 Select the wrongly spelt word.

- Ans
- 1. laudable
  - 2. laughable
  - 3. liabel
  - 4. lamentable

Question ID : 98958011385  
Status : Answered  
Chosen Option : 3

Q.1  
75 Select the most appropriate word for the given group of words.

an obsessive desire to set fire to things

- Ans
- 1. hypomania
  - 2. pyromania
  - 3. insomnia
  - 4. monomania

Question ID : 98958011384  
Status : Answered  
Chosen Option : 2

Q.1  
76 Select the most appropriate meaning of the given idiom.

A hot potato

- Ans
- 1. an offensive remark
  - 2. a tasty snack
  - 3. a memorable thing
  - 4. a controversial issue

Question ID : 98958011377  
Status : Answered  
Chosen Option : 4

Q.1  
77 Select the antonym of the given word.

ELABORATE

- Ans
- 1. complicated
  - 2. detailed
  - 3. minimal
  - 4. involved

Question ID : 98958011371  
Status : Answered  
Chosen Option : 3

**Comprehension:**

In the following passage some words have been deleted. Fill in the blanks with the help of the alternatives given. Select the most appropriate option for each number.

Mount Agung is a volcano on the popular tourist island of Bali in Indonesia. The volcano \_\_\_\_\_ (1) in November 2017. More than 134,000 people were \_\_\_\_\_ (2) to safe areas in advance. They \_\_\_\_\_ (3) housed far away from the volcano. \_\_\_\_\_ (4), some had refused to leave. These people did not \_\_\_\_\_ (5) to leave their homes. They wanted to take care of their farms and animals.

SubQuestion No : 178

Q.1  
78 Select the most appropriate option to fill in blank No.1.

- Ans
- 1. erupted
  - 2. exploded
  - 3. blasted
  - 4. fired

Question ID : 98958011360  
Status : Answered  
Chosen Option : 1



**Comprehension:**

In the following passage some words have been deleted. Fill in the blanks with the help of the alternatives given. Select the most appropriate option for each number.

Mount Agung is a volcano on the popular tourist island of Bali in Indonesia. The volcano \_\_\_\_\_ (1) in November 2017. More than 134,000 people were \_\_\_\_\_ (2) to safe areas in advance. They \_\_\_\_\_ (3) houses far away from the volcano. \_\_\_\_\_ (4), some had refused to leave. These people did not \_\_\_\_\_ (5) to leave their homes. They wanted to take care of their farms and animals.

SubQuestion No : 179

Q.1  
79 Select the most appropriate option to fill in blank No.2.

- Ans
- 1. abandoned
  - 2. exited
  - 3. left
  - 4. evacuated

Question ID : 98958011361

Status : Answered

Chosen Option : 4

**Comprehension:**

In the following passage some words have been deleted. Fill in the blanks with the help of the alternatives given. Select the most appropriate option for each number.

Mount Agung is a volcano on the popular tourist island of Bali in Indonesia. The volcano \_\_\_\_\_ (1) in November 2017. More than 134,000 people were \_\_\_\_\_ (2) to safe areas in advance. They \_\_\_\_\_ (3) houses far away from the volcano. \_\_\_\_\_ (4), some had refused to leave. These people did not \_\_\_\_\_ (5) to leave their homes. They wanted to take care of their farms and animals.

SubQuestion No : 180

Q.1  
80 Select the most appropriate option to fill in blank No.3.

- Ans
- 1. were
  - 2. is
  - 3. had
  - 4. have

Question ID : 98958011362

Status : Answered

Chosen Option : 1

**Comprehension:**

In the following passage some words have been deleted. Fill in the blanks with the help of the alternatives given. Select the most appropriate option for each number.

Mount Agung is a volcano on the popular tourist island of Bali in Indonesia. The volcano \_\_\_\_\_ (1) in November 2017. More than 134,000 people were \_\_\_\_\_ (2) to safe areas in advance. They \_\_\_\_\_ (3) housed far away from the volcano. \_\_\_\_\_ (4), some had refused to leave. These people did not \_\_\_\_\_ (5) to leave their homes. They wanted to take care of their farms and animals.

SubQuestion No : 181

Q.1  
81 Select the most appropriate option to fill in blank No.4.

- Ans
- 1. However
  - 2. Whether
  - 3. Moreover
  - 4. Because

Question ID : 98958011363

Status : Answered

Chosen Option : 1

Comprehension:

In the following passage some words have been deleted. Fill in the blanks with the help of the alternatives given. Select the most appropriate option for each number.

Mount Agung is a volcano on the popular tourist island of Bali in Indonesia. The volcano \_\_\_\_\_ (1) in November 2017. More than 134,000 people were \_\_\_\_\_ (2) to safe areas in advance. They \_\_\_\_\_ (3) housed far away from the volcano. \_\_\_\_\_ (4), some had refused to leave. These people did not \_\_\_\_\_ (5) to leave their homes. They wanted to take care of their farms and animals.

SubQuestion No : 182

Q.1  
82 Select the most appropriate option to fill in blank No.5.

- Ans
- 1. long
  - 2. wish
  - 3. desire
  - 4. fancy

Question ID : 98958011364

Status : Answered

Chosen Option : 1

Comprehension:

Read the following passage and answer the questions given after it.

Twenty five years ago, while travelling and teaching in Turkey, Nepal and Iran, Bonnie Bergin noticed self-sufficient disabled people going about their unremarkable daily business, often using donkeys to hold pots, pans and other wares to be sold. She later returned to the United States to begin work on a master's degree in special education.

"I thought hard about what can be done to get people out of institutions and onto the streets, getting jobs, and it came to me: dogs," says Bergin, who today has a doctorate in education and is the founder of the Assistance Dog Institute and originator of the service-dog concept.

She ran into fierce resistance from academics and professionals at first: Dogs spread disease. Dogs are stupid. The disabled can't take care of dogs, how could dogs take care of them? But the long list of negative reactions didn't stop her. Her first trainee was Abdul, a golden retriever puppy someone had given her.

Her first dog-assistance client was Kerry Knaus, a soft-spoken 19-year-old woman who had a neuromuscular disorder that had left her unable to move her legs and much of her arms. If Knaus accidentally fell forward in her wheelchair, she could not get up. She clearly lacked the physical force to train and maintain a dog. But Bergin was undeterred.

Bergin and Knaus concentrated not on physical gestures, but on verbal cues such as "sit" or "stay," using variations in tone of voice and facial expression to get Abdul to help Knaus.

By the end of his training, the dog could push Knaus up from her in-chair falls, open doors, turn on lights, retrieve food and push levers to help her operate the chair lift to her van. Most important, Knaus developed a trusting emotional bond with Abdul simply by spending time with him, much in the way humans get to know one another and develop subtle, complex relationships based on mutual understanding.

Today, more than 150 programs provide similar services, and an estimated 3,500 service dogs are in place worldwide. Waiting lists for the dogs, who are worth around \$10,000 by the end of training, can be long--sometimes five years--because of the extensive breeding, training and bonding required.

SubQuestion No : 183

Q.1  
83 What inspired Bonnie Bergin to help disabled people become self-sufficient?

Ans



- 1. Her Master's degrees in Special Education
- 2. Her observation of disabled people who managed everyday chores using donkeys
- 3. Her training in handling dogs and teaching them to help people
- 4. Her travels and teaching in foreign countries as part of her daily work

Question ID : 98958011391

Status : Answered

Chosen Option : 2

Comprehension:

KD JOB UPDATES

Read the following passage and answer the questions given after it.

Twenty five years ago, while travelling and teaching in Turkey, Nepal and Iran, Bonnie Bergin noticed self-sufficient disabled people going about their unremarkable daily business, often using donkeys to hold pots, pans and other wares to be sold. She later returned to the United States to begin work on a master's degree in special education.

"I thought hard about what can be done to get people out of institutions and onto the streets, getting jobs, and it came to me: dogs," says Bergin, who today has a doctorate in education and is the founder of the Assistance Dog Institute and originator of the service-dog concept.

She ran into fierce resistance from academics and professionals at first: Dogs spread disease. Dogs are stupid. The disabled can't take care of dogs, how could dogs take care of them? But the long list of negative reactions didn't stop her. Her first trainee was Abdul, a golden retriever puppy someone had given her.

Her first dog-assistance client was Kerry Knaus, a soft-spoken 19-year-old woman who had a neuromuscular disorder that had left her unable to move her legs and much of her arms. If Knaus accidentally fell forward in her wheelchair, she could not get up. She clearly lacked the physical force to train and maintain a dog. But Bergin was undeterred.

Bergin and Knaus concentrated not on physical gestures, but on verbal cues such as "sit" or "stay," using variations in tone of voice and facial expression to get Abdul to help Knaus.

By the end of his training, the dog could push Knaus up from her in-chair falls, open doors, turn on lights, retrieve food and push levers to help her operate the chair lift to her van. Most important, Knaus developed a trusting emotional bond with Abdul simply by spending time with him, much in the way humans get to know one another and develop subtle, complex relationships based on mutual understanding.

Today, more than 150 programs provide similar services, and an estimated 3,500 service dogs are in place worldwide. Waiting lists for the dogs, who are worth around \$10,000 by the end of training, can be long--sometimes five years--because of the extensive breeding, training and bonding required.

SubQuestion No : 184

Q.1  
84 The academics and professionals tried to dissuade Bonnie from using dogs to help the disabled basically because they

- Ans
- 1. believed that dogs spread diseases.
  - 2. thought dogs were stupid animals.
  - 3. knew that the disabled couldn't take care of dogs.
  - 4. were convinced that dogs could not help the disabled.

Question ID : 98958011392  
Status : Answered  
Chosen Option : 4

Comprehension:

KD JOB UPDATES



Read the following passage and answer the questions given after it.

Twenty five years ago, while travelling and teaching in Turkey, Nepal and Iran, Bonnie Bergin noticed self-sufficient disabled people going about their unremarkable daily business, often using donkeys to hold pots, pans and other wares to be sold. She later returned to the United States to begin work on a master's degree in special education.

"I thought hard about what can be done to get people out of institutions and onto the streets, getting jobs, and it came to me: dogs," says Bergin, who today has a doctorate in education and is the founder of the Assistance Dog Institute and originator of the service-dog concept.

She ran into fierce resistance from academics and professionals at first: Dogs spread disease. Dogs are stupid. The disabled can't take care of dogs, how could dogs take care of them? But the long list of negative reactions didn't stop her. Her first trainee was Abdul, a golden retriever puppy someone had given her.

Her first dog-assistance client was Kerry Knaus, a soft-spoken 19-year-old woman who had a neuromuscular disorder that had left her unable to move her legs and much of her arms. If Knaus accidentally fell forward in her wheelchair, she could not get up. She clearly lacked the physical force to train and maintain a dog. But Bergin was undeterred.

Bergin and Knaus concentrated not on physical gestures, but on verbal cues such as "sit" or "stay," using variations in tone of voice and facial expression to get Abdul to help Knaus.

By the end of his training, the dog could push Knaus up from her in-chair falls, open doors, turn on lights, retrieve food and push levers to help her operate the chair lift to her van. Most important, Knaus developed a trusting emotional bond with Abdul simply by spending time with him, much in the way humans get to know one another and develop subtle, complex relationships based on mutual understanding.

Today, more than 150 programs provide similar services, and an estimated 3,500 service dogs are in place worldwide. Waiting lists for the dogs, who are worth around \$10,000 by the end of training, can be long--sometimes five years--because of the extensive breeding, training and bonding required.

SubQuestion No : 185

Q.1  
85 Which of the following approaches did Bonnie and Knaus NOT adopt to train Abdul to help Knaus?

- Ans
- 1. verbal clues like 'sit' or 'stay'
  - 2. variations in tones of voice
  - 3. variations in facial expressions
  - 4. physical gestures to direct the dog

Question ID : 98958011393  
Status : Answered  
Chosen Option : 4

Comprehension:

KD JOB UPDATES

Read the following passage and answer the questions given after it.

Twenty five years ago, while travelling and teaching in Turkey, Nepal and Iran, Bonnie Bergin noticed self-sufficient disabled people going about their unremarkable daily business, often using donkeys to hold pots, pans and other wares to be sold. She later returned to the United States to begin work on a master's degree in special education.

"I thought hard about what can be done to get people out of institutions and onto the streets, getting jobs, and it came to me: dogs," says Bergin, who today has a doctorate in education and is the founder of the Assistance Dog Institute and originator of the service-dog concept.

She ran into fierce resistance from academics and professionals at first: Dogs spread disease. Dogs are stupid. The disabled can't take care of dogs, how could dogs take care of them? But the long list of negative reactions didn't stop her. Her first trainee was Abdul, a golden retriever puppy someone had given her.

Her first dog-assistance client was Kerry Knaus, a soft-spoken 19-year-old woman who had a neuromuscular disorder that had left her unable to move her legs and much of her arms. If Knaus accidentally fell forward in her wheelchair, she could not get up. She clearly lacked the physical force to train and maintain a dog. But Bergin was undeterred.

Bergin and Knaus concentrated not on physical gestures, but on verbal cues such as "sit" or "stay," using variations in tone of voice and facial expression to get Abdul to help Knaus.

By the end of his training, the dog could push Knaus up from her in-chair falls, open doors, turn on lights, retrieve food and push levers to help her operate the chair lift to her van. Most important, Knaus developed a trusting emotional bond with Abdul simply by spending time with him, much in the way humans get to know one another and develop subtle, complex relationships based on mutual understanding.

Today, more than 150 programs provide similar services, and an estimated 3,500 service dogs are in place worldwide. Waiting lists for the dogs, who are worth around \$10,000 by the end of training, can be long--sometimes five years--because of the extensive breeding, training and bonding required.

SubQuestion No : 186

Q.1  
86 At the end of the training, which of the following was the most important help that Abdul could provide to Knaus?

Ans

- 1. he could open doors and turn on lights
- 2. he could push Knaus up from her in-chair falls
- 3. he could help her operate the chair lift to her van
- 4. he could retrieve food

Question ID : 98958011394

Status : Answered

Chosen Option : 2

Comprehension:

KD JOB UPDATES



Read the following passage and answer the questions given after it.

Twenty five years ago, while travelling and teaching in Turkey, Nepal and Iran, Bonnie Bergin noticed self-sufficient disabled people going about their unremarkable daily business, often using donkeys to hold pots, pans and other wares to be sold. She later returned to the United States to begin work on a master's degree in special education.

"I thought hard about what can be done to get people out of institutions and onto the streets, getting jobs, and it came to me: dogs," says Bergin, who today has a doctorate in education and is the founder of the Assistance Dog Institute and originator of the service-dog concept.

She ran into fierce resistance from academics and professionals at first: Dogs spread disease. Dogs are stupid. The disabled can't take care of dogs, how could dogs take care of them? But the long list of negative reactions didn't stop her. Her first trainee was Abdul, a golden retriever puppy someone had given her.

Her first dog-assistance client was Kerry Knaus, a soft-spoken 19-year-old woman who had a neuromuscular disorder that had left her unable to move her legs and much of her arms. If Knaus accidentally fell forward in her wheelchair, she could not get up. She clearly lacked the physical force to train and maintain a dog. But Bergin was undeterred.

Bergin and Knaus concentrated not on physical gestures, but on verbal cues such as "sit" or "stay," using variations in tone of voice and facial expression to get Abdul to help Knaus.

By the end of his training, the dog could push Knaus up from her in-chair falls, open doors, turn on lights, retrieve food and push levers to help her operate the chair lift to her van. Most important, Knaus developed a trusting emotional bond with Abdul simply by spending time with him, much in the way humans get to know one another and develop subtle, complex relationships based on mutual understanding.

Today, more than 150 programs provide similar services, and an estimated 3,500 service dogs are in place worldwide. Waiting lists for the dogs, who are worth around \$10,000 by the end of training, can be long--sometimes five years--because of the extensive breeding, training and bonding required.

SubQuestion No : 187

Q.1 87 Which statement is NOT true according to the passage?

Ans

1. Today about 3,500 service dogs are in place worldwide for helping the disabled.
2. Today, more than 150 programs provide similar services of trained dogs to disabled people.
3. The service dogs cost about \$10,000 after the training.
4. Bonnie Bergin got her master's degree from Assistance Dog Institute.

Question ID : 98958011395  
Status : Answered  
Chosen Option : 4

Q.1 88 Select the most appropriate option to substitute the underlined segment in the given sentence. If there is no need to substitute it, select No improvement.

I think all our furniture needing to be polished.

- Ans  1. No improvement.
2. needs to be polished.
3. are needing to be polished.
4. need to polish.

Question ID : 98958011350  
Status : Answered  
Chosen Option : 2

Q.1 89 Select the most appropriate word to fill in the blank.

If I had money, I \_\_\_\_\_ have helped him.

- Ans  1. would
2. will
3. can
4. should

Question ID : 98958011354  
Status : Answered  
Chosen Option : 1

Q.1 90 Select the most appropriate word to fill in the blank.

Everything happened \_\_\_\_\_ quickly \_\_\_\_\_ I felt dazed.

- Ans  1. so; as
2. as; as
3. as; so
4. so; that

Question ID : 98958011356  
Status : Answered  
Chosen Option : 4



Q.1  
91 Identify the segment in the sentence, which contains the grammatical error.

Unless you do not run fast, you cannot catch the bus.

- Ans
- 1. you cannot
  - 2. catch the bus.
  - 3. you do not
  - 4. run fast

Question ID : 98958011346  
Status : Answered  
Chosen Option : 1

Q.1  
92 Identify the segment in the sentence, which contains the grammatical error.

He is not such a clever boy that you are.

- Ans
- 1. clever boy
  - 2. He is not
  - 3. such a
  - 4. that you are

Question ID : 98958011345  
Status : Answered  
Chosen Option : 3

Q.1  
93 Identify the segment in the sentence which contains the grammatical error.

Where have you been from such a long time?

- Ans
- 1. from
  - 2. have you been
  - 3. Where
  - 4. such a long time?

Question ID : 98958011347  
Status : Answered  
Chosen Option : 2

Q.1  
94 Select the most appropriate word to fill in the blank.

We didn't buy the dining table because \_\_\_\_\_ was too expensive.

- Ans
- 1. its'
  - 2. it
  - 3. its
  - 4. it's

Question ID : 98958011357  
Status : Answered

Q.1  
95 Select the most appropriate word for the given group of words.

relating to speeds close to that of sound.

- Ans
- 1. translucent
  - 2. transformed
  - 3. transparent
  - 4. transonic

Question ID : 98958011383

Status : Answered

Chosen Option : 4

Q.1  
96 Identify the segment in the sentence, which contains the grammatical error.

He is the same man which I saw yesterday at the gate.

- Ans
- 1. the same man
  - 2. at the gate
  - 3. which I saw
  - 4. He is

Question ID : 98958011344

Status : Answered

Chosen Option : 3

Q.1  
97 Select the most appropriate option to substitute the underlined segment in the given sentence. If there is no need to substitute it, select No improvement.

He sat down beside me and start to read his newspaper.

- Ans
- 1. started read
  - 2. started to be reading
  - 3. started reading
  - 4. No improvement.

Question ID : 98958011351

Status : Answered

Chosen Option : 3

Q.1  
98 Select the antonym of the given word.

DUBIOUS

- Ans
- 1. unconvinced
  - 2. doubtful
  - 3. hesitant
  - 4. certain

Question ID : 98958011373

Status : **Answered**  
Chosen Option : **4**

Q.1  
99 Select the synonym of the given word.

FILLIP

- Ans
- 1. flip
  - 2. boost
  - 3. blow
  - 4. knock

Question ID : **98958011365**  
Status : **Answered**  
Chosen Option : **1**

Q.2  
00 Select the most appropriate word for the given group of words.

Something made impure by exposure to polluting substances

- Ans
- 1. contented
  - 2. contaminated
  - 3. contagious
  - 4. contractual

Question ID : **98958011380**  
Status : **Answered**  
Chosen Option : **2**

KD JOB UPDATES

# Recruitment of Sub-Inspector in Delhi Police, CAPFs and Assistant Sub-Inspector in CISF Examination, 2018

Roll No. :	
Registration No.	
Name :	
Exam Venue :	
Exam Time :	3:00 PM - 5:00 PM
Exam Date :	14/03/2019

Section : SI CPO


Q.1 Select the word-pair in which the two words are related in the same way as are the two words in the following word-pair.

Army : General

- Ans
- 1. Hospital : Patient
  - 2. Company : Director
  - 3. College : Student
  - 4. Worker : Factory

Question ID : 98958011104  
Status : Answered  
Chosen Option : 2

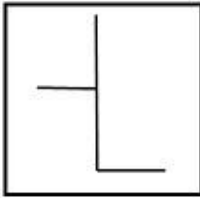
Q.2 Select the figure which is embedded in the given figure.



Ans

- 1.
- 2.
- 3.

4.



Question ID : 98958011137

Status : Not Attempted and Marked For Review

Chosen Option : --

Q.3 Which number in the given series is incorrect?

3, 7, 7, 11, 9, 13, 13, 17, 15, 23

Ans  1. 17

2. 9

3. 23

4. 13

Question ID : 98958011114

Status : Not Attempted and Marked For Review

Chosen Option : --

Q.4 Abhijeet leaves his house and moves 30 m in the North-West direction. Then, he goes 30 m in the South-West direction. Next, he moves 30 m in the South-East direction. Then, he moves 30 m in the North-East direction. How far away is he from his house?

Ans  1. 10 m

2. 20 m

3. 0 m

4. 30 m

Question ID : 98958011129

Status : Answered

Chosen Option : 3

Q.5 If  $\div$  means '+',  $\times$  means ' $\div$ ',  $+$  means ' $-$ ' and  $-$  means ' $\times$ ', then what is the value of the following expression?

$$16 - 4 + 12 \times 3 \div 5 = ?$$

Ans  1. 59

2. 53

3. 65

4. 67

Question ID : 98958011127

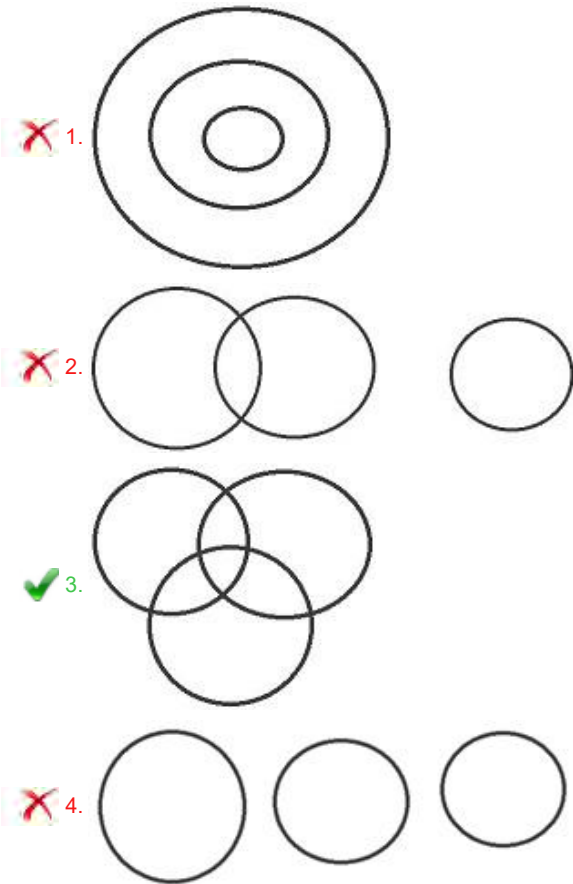
Status : Answered

Chosen Option : 3

Q.6 Choose the Venn diagram from the given options that best represents the relationship amongst the following classes:

Graduate, Painter, Teacher

Ans



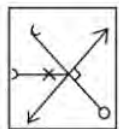
Question ID : 98958011143  
 Status : Answered  
 Chosen Option : 3

Q.7 'Lethargy' is related to 'Alertness' in the same way as 'Hostility' is related to:

- Ans
- 1. Violence
  - 2. Cordiality
  - 3. Pride
  - 4. Antagonism

Question ID : 98958011103  
 Status : Answered  
 Chosen Option : 2

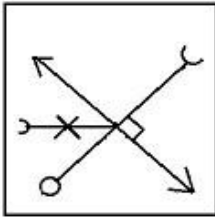
Q.8 Select the mirror image of the given figure when the mirror is placed vertically to the right of the figure.



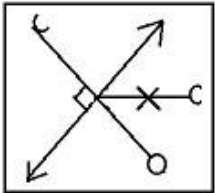
- Ans
- 1.



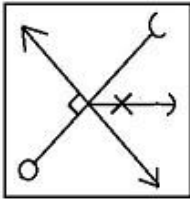
2.



3.



4.



Question ID : 98958011138

Status : Answered

Chosen Option : 1

Q.9 Select the correct alternative to indicate the arrangement of the following words in a logical and meaningful order.

1. Karnataka
2. Bengaluru
3. Asia
4. India
5. World

Ans  1. 1, 5, 4, 3, 2

2. 2, 3, 4, 1, 5

3. 3, 4, 2, 1, 5

4. 2, 1, 4, 3, 5

Question ID : 98958011096

Status : Answered

Chosen Option : 4

Q.1 Select the option that is related to the fourth term in the same way as the first term is related to the second term.

0 E G J : J L O :: \_\_\_ : T V Y

Ans  1. N P S

2. N P R

3. O R T

4. O Q T

Question ID : 98958011107

Status : Answered

Chosen Option : 4

Q.1  
1

Choose the mirror image of the given word if the mirror is placed to the right of the word.

E8t4g9C

- Ans
- 1.
  - 2.
  - 3.
  - 4.

Question ID : 98958011139  
Status : Answered  
Chosen Option : 1

Q.1  
2 Which two signs should be interchanged to make the given equation correct?

$$20 + 5 \times 3 \div 3 - 1 = 14$$

- Ans
- 1.  $\times$  and  $-$
  - 2.  $\div$  and  $\times$
  - 3.  $\div$  and  $+$
  - 4.  $\times$  and  $+$

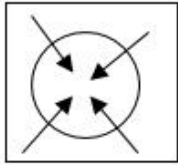
Question ID : 98958011126  
Status : Answered  
Chosen Option : 3

Q.1  
3 Select the figure that will come next in the following figure series.



- Ans
- 1.
  - 2.
  - 3.

4.




Question ID : 98958011131  
Status : Answered  
Chosen Option : 3

Q.1  
4 Select the figure that will come next in the following series.

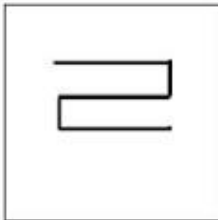


Ans

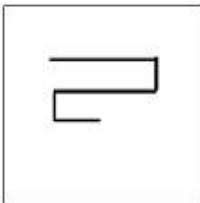
1.



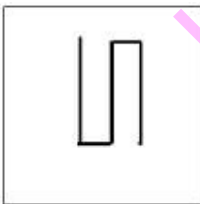
2.



3.



4.



Question ID : 98958011132  
Status : Answered  
Chosen Option : 2

Q.1  
5 Select the number pair that is analogous to the given number pair.

216 : 343

Ans  1. 1009 : 1331

2. 216 : 727

3. 8 : 27

✗ 4. 27 : 125

Question ID : 98958011119  
Status : Answered  
Chosen Option : 3

Q.1  
6 Which number will come next in the following series?

136, 137, 135, 138, 134, 139, \_\_\_\_\_

- Ans
- ✗ 1. 136
  - ✗ 2. 138
  - ✗ 3. 139
  - ✓ 4. 133

Question ID : 98958011115  
Status : Answered  
Chosen Option : 4

Q.1  
7 Which letter-cluster will replace the question mark (?) in the following series?

DEY, FFW, IGT, KHR, NIO, ?

- Ans
- ✗ 1. QJM
  - ✓ 2. PJM
  - ✗ 3. PJN
  - ✗ 4. QJN

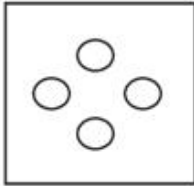
Question ID : 98958011095  
Status : Answered  
Chosen Option : 2

Q.1  
8 A piece of paper is folded and cut as shown below. How will it appear when unfolded?



- Ans
- ✗ 1.
  - ✗ 2.
  - ✗ 3.

✓ 4.



Question ID : 98958011140  
Status : Answered  
Chosen Option : 4

Q.1 Tina is 75 m South-East of Veena. Reena is 75 m South-West of Veena. Tina is to the \_\_\_\_\_ of Reena.

- Ans
- 1. South
  - 2. East
  - 3. West
  - 4. North

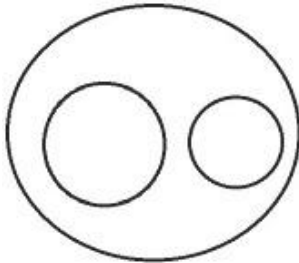
Question ID : 98958011130  
Status : Answered  
Chosen Option : 2

Q.2 Choose the Venn diagram from the given options that best represents the relationship amongst the following classes:

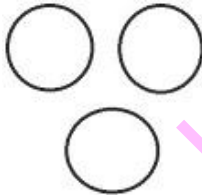
Indonesia, Asia, Bangladesh

Ans

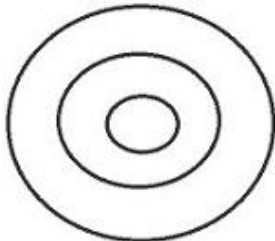
✓ 1.



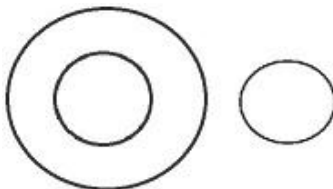
✗ 2.



✗ 3.



✗ 4.



Question ID : 98958011142  
Status : Answered  
Chosen Option : 1

Q.2 Three of the following four words are alike in a certain way and one is different. Find the odd one out.

1

- Ans
- 1. Triumph
  - 2. Setback
  - 3. Victory
  - 4. Success

Question ID : 98958011100  
Status : Answered  
Chosen Option : 2

Q.2 Select the correct alternative to indicate the arrangement of the following words in a logical and meaningful order.

2

- 1.State
- 2.Street
- 3.House number
- 4.City
- 5.Country

- Ans
- 1. 3, 2, 4, 1, 5
  - 2. 3, 4, 2, 1, 5
  - 3. 2, 3, 4, 5, 1
  - 4. 1, 5, 4, 3, 2

Question ID : 98958011097  
Status : Marked For Review  
Chosen Option : 2

Q.2 If A= 4 and C=6, then how will you code POWER?

3

- Ans
- 1. 191826821
  - 2. 191825821
  - 3. 181726821
  - 4. 181725720

Question ID : 98958011111  
Status : Answered  
Chosen Option : 1

Q.2 Three of the following four numbers are alike in a certain way and one is different. Find the odd one out.

4

- Ans
- 1. 594
  - 2. 693
  - 3. 462
  - 4. 573

Question ID : 98958011120  
Status : Answered  
Chosen Option : 4



Q.2 Consider the following statements to be true even if they seem to be at variance from commonly known facts and decide which of the conclusions logically follows from the statements.

5

**Statements:**

- A. Some clocks are Instruments.
- B. Some Instruments are hands.

**Conclusions:**

- I. Some hands are clocks.
- II. No hand is a clock.

Ans

- 1. Only conclusion I follows
- 2. Neither conclusion I nor II follows
- 3. Only conclusion II follows
- 4. Either conclusion I or II follows

Question ID : 98958011113  
Status : Answered  
Chosen Option : 4

Q.2 Three of the following four pairs of numbers are alike in a certain way and one is different. Find the odd one out.

6

Ans

- 1. 63 - 72
- 2. 104 - 117
- 3. 136 - 153
- 4. 152 - 171

Question ID : 98958011122  
Status : Marked For Review  
Chosen Option : 3

Q.2 'Mass' is related to 'Kilogram' in the same way as 'Force' is related to:

7

Ans

- 1. Second
- 2. Newton
- 3. Pascal
- 4. Joule

Question ID : 98958011102  
Status : Answered  
Chosen Option : 2

Q.2 Three of the following four letter-clusters are alike in a certain way and one is different. Find the odd one out.

8

Ans

- 1. HKNQT
- 2. TWYBC
- 3. BEHKN
- 4. QTWZC

Question ID : 98958011099  
Status : Answered  
Chosen Option : 2

Q.2

9 Select the option that is most like the given set.

(23, 136, 45)

- Ans
- 1. (29, 78, 11)
  - 2. (31, 126, 37)
  - 3. (17, 50, 33)
  - 4. (19, 96, 29)

Question ID : 98958011125  
Status : Not Attempted and Marked For Review  
Chosen Option : --

Q.3 In a certain code language 'DEAR' is written as '7465' and 'LIFE' is written as '8394'. How will 'IDEAL' be written in the same code language?

- 0
- Ans
- 1. 37468
  - 2. 84673
  - 3. 73648
  - 4. 37684

Question ID : 98958011110  
Status : Answered  
Chosen Option : 1

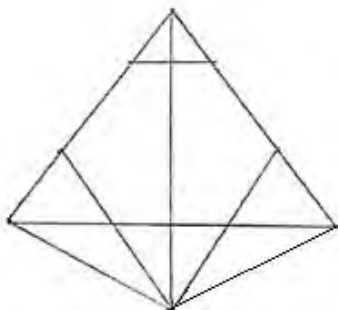
Q.3 Select the option that is most like the given set.

(3, 15, 123)

- 1
- Ans
- 1. (2, 26, 125)
  - 2. (5, 36, 341)
  - 3. (4, 24, 214)
  - 4. (8, 63, 998)

Question ID : 98958011124  
Status : Not Attempted and Marked For Review  
Chosen Option : --

Q.3 How many triangles are there in the following figure?



- 2
- Ans
- 1. 30

- 2. 26
- 3. 28
- 4. 24



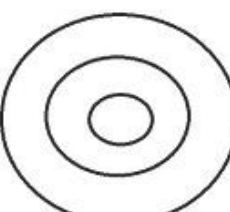
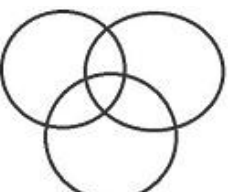
Question ID : 98958011134  
 Status : Not Attempted and Marked For Review  
 Chosen Option : --

Q.3 Choose the Venn diagram from the given options that best represents the relationship amongst the following classes:

3

Clerk, Male, Permanent Employee

Ans

- 1. 
- 2. 
- 3. 
- 4. 

KD JOB UPDATES

Question ID : 98958011141  
 Status : Answered  
 Chosen Option : 4

Q.3 If in a certain language, EXAMPLE is coded as DWZLOKD, how will ELECTION be coded in that language?

4

- 1. DKDBSJHM
- 2. DKEBSHNM
- 3. EKDBSHNM
- 4. DKDBSHNM

Question ID : 98958011108  
 Status : Answered  
 Chosen Option : 3

Q.3 Select the option that is related to the third term in the same way as the second term is related to the first term.

5

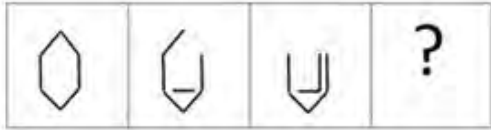
MUSCLE : SUMLEC :: OUTPUT : \_\_\_\_\_

- 1. UTOPUT
- 2. PUTOUT

- 3. TOUTUP
- 4. TUOUTP

Question ID : 98958011106  
 Status : Answered  
 Chosen Option : 4

Q.3  
6 Select the figure that will come next in the following series.



Ans

- 1.
- 2.
- 3.
- 4.

KD JOB UPDATES

Question ID : 98958011133  
 Status : Marked For Review  
 Chosen Option : 3

Q.3  
7 If in a certain code, EARTH is written as FZSSI, which word would be coded as XZUDS?

- 1. WAVER
- 2. YXVET
- 3. WATER
- 4. WAVES

Question ID : 98958011109  
 Status : Not Attempted and Marked For Review  
 Chosen Option : --

Q.3  
8 Which number will come next in the following series?  
 1, 2, 5, \_\_\_\_, 677

- Ans
- 1. 11
  - 2. 26
  - 3. 95
  - 4. 25

Question ID : 98958011116  
 Status : Answered  
 Chosen Option : 2

Q.3 Consider the following statements to be true even if they seem to be at variance from commonly known facts and decide which of the conclusions logically follows from the statements.

Statements:

- All leaders are statesmen.
- All statesmen are orators.

Conclusions:

- I. All leaders are orators.
- II. All statesmen are leaders.

- Ans
- 1. Neither conclusion I nor II follows
  - 2. Only conclusion II follows
  - 3. Both conclusions I and II follow
  - 4. Only conclusion I follows

Question ID : 98958011112  
 Status : Answered  
 Chosen Option : 4

Q.4 If @ denotes  $\div$ , # denotes  $\times$ , \$ denotes  $+$  and % denotes  $-$ , then what will be the value of the following expression?

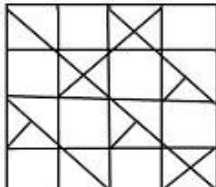
$$18 \# 2 @ 2 \$ 18 \% 18$$

- Ans
- 1. 0
  - 2. 2
  - 3. 36
  - 4. 18

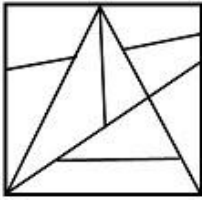
Question ID : 98958011128  
 Status : Answered  
 Chosen Option : 4

Q.4 Select the option in which the given figure is embedded.

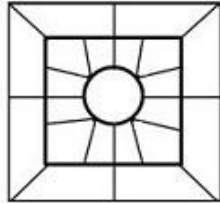


- Ans
- 1. 

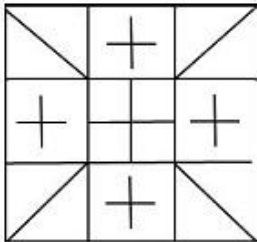
2.



3.



4.



Question ID : 98958011136

Status : Answered

Chosen Option : 1

Q.4 Two positions of a dice are shown below. When there are five dots at the top, how many dots will be at the bottom?  
2



Ans

1. 1

2. 2

3. 6

4. 3

Question ID : 98958011135

Status : Answered

Chosen Option : 2

Q.4 Three of the following four numbers are alike in a certain way and one is different. Find the odd one out.  
3

Ans

1. 104

2. 32

3. 48

4. 28

Question ID : 98958011121

Status : Answered

Chosen Option : 4

Q.4 Three of the following four pairs of numbers are alike in a certain way and one is different. Find the odd one out.  
4

Ans

1. 22, 4



2. 11, 8

3. 7, 12

4. 44, 2

Question ID : 98958011123

Status : Not Attempted and Marked For Review

Chosen Option : --

Q.4  
5 Select the number pair that is analogous to the given number pair.

13 : 338

Ans  1. 5 : 52

2. 9 : 729

3. 8 : 128

4. 15 : 225

Question ID : 98958011118

Status : Answered

Chosen Option : 3

Q.4 Select the word-pair in which the two words are related in the same way as are the two words in the following word-pair

6 Smile : Laugh

Ans  1. Speak : Shout

2. Run : Stand

3. Blend : Mixture

4. Sad : Happy

Question ID : 98958011105

Status : Answered

Chosen Option : 1

Q.4 Select the option that is related to the third term in the same way as the second term is related to the first term.

7 24 : 102 :: 16 : \_\_\_\_

Ans  1. 346

2. 68

3. 60

4. 64

Question ID : 98958011117

Status : Answered

Chosen Option : 2

Q.4 Three of the following four pairs of words are alike in a certain way and one is different. Find the odd one out.

8

Ans  1. Bear - Deer

2. Frog - Crocodile

3. Snake - Lizard

4. Parrot - Eagle

Question ID : 98958011101  
Status : Answered  
Chosen Option : 1

Q.4  
9 Which letter will replace the question mark (?) in the following series?

C, E, I, O, ?

- Ans  1. W  
 2. A  
 3. Z  
 4. X

Question ID : 98958011094  
Status : Answered  
Chosen Option : 1

Q.5  
0 Three of the following four letter-clusters are alike in a certain way and one is different. Find the odd one out.

- Ans  1. CKXP  
 2. GHTR  
 3. FJUQ  
 4. AEZV

Question ID : 98958011098  
Status : Answered  
Chosen Option : 4

Q.5  
1 The International Day of the Girl Child is observed every year across the world on \_\_\_\_\_.

- Ans  1. 25 January  
 2. 11 October  
 3. 19 December  
 4. 15 March

Question ID : 98958011752  
Status : Not Answered  
Chosen Option : --

Q.5  
2 Dhyhan Chand Award 2018 Recipient for archery is bestowed upon \_\_\_\_\_ for lifetime contribution to sports development.

- Ans  1. Satyadev Prasad  
 2. Chougale Dadu Dattatray  
 3. Bharat Kumar Chetri  
 4. Bobby Aloysius

Question ID : 98958011740

Status : Answered  
Chosen Option : 4

Q.5 Which of the following states/union territories does NOT have more than 75% forest cover as of forest report 2017?  
3

- Ans
- 1. Mizoram
  - 2. Andaman and Nicobar Islands
  - 3. Assam
  - 4. Lakshadweep

Question ID : 98958011721  
Status : Not Answered  
Chosen Option : --

Q.5 It is not feasible to implement \_\_\_\_\_ at the national level because the land data is yet to be digitized in several states including Jharkhand, Bihar, Gujarat, and Tamil Nadu.  
4

- Ans
- 1. Antyodaya Anna Yojana
  - 2. Rythu Bandhu Scheme
  - 3. Sukanya Samridhi Account
  - 4. Jago Grahak Jago

Question ID : 98958011745  
Status : Not Answered  
Chosen Option : --

Q.5 Hunar Haat exhibitions, aimed at \_\_\_\_\_ plays an important role in national and international branding of the heritage of master artisans in India.  
5

- Ans
- 1. "Grow with art"
  - 2. "Preserve Heritage"
  - 3. "Development with Dignity"
  - 4. "Work with mission"

Question ID : 98958011742  
Status : Answered  
Chosen Option : 1

Q.5 According to a study by Dr. Anoop Misra, chairman Fortis C-DOC and his team, even non-obese and lean persons may be prone to \_\_\_\_\_.  
6

- Ans
- 1. Type 2 diabetes
  - 2. Thyroid problems
  - 3. Type 1 diabetes
  - 4. Arthritis

Question ID : 98958011749  
Status : Not Answered  
Chosen Option : --

Q.5

7 Which of the following was NOT one of the fields in which an award was given at the Pradhan Mantri Rashtriya Bal Puraskar 2019?

- Ans
- 1. Innovation
  - 2. Science
  - 3. Scholastic
  - 4. Bravery

Question ID : 98958011722  
Status : Not Answered  
Chosen Option : --

Q.5 \_\_\_\_\_ is an epic poem by Asvaghōṣa, which narrates the life of Buddha from his birth till the time he attained Nirvana.

- Ans
- 1. Buddhacharita
  - 2. Arthashastra
  - 3. Kiratarjuniya
  - 4. Shishupala Vadha

Question ID : 98958011710  
Status : Answered  
Chosen Option : 1

Q.5 The levels of glycated hemoglobin in blood are influenced by many factors. Which of the following is NOT one of them?

- Ans
- 1. Anaemia
  - 2. Iron deficiency
  - 3. Pregnancy
  - 4. Loss of memory

Question ID : 98958011736  
Status : Answered  
Chosen Option : 3

Q.6 Prime Minister Narendra Modi launched the Pravasi Teerth Darshan Yojana. Which of the following is NOT one of its features?

- Ans
- 1. Those selected would be taken to religious places of all major religions in India.
  - 2. Under the scheme, a group of Indian diaspora will be taken on a government-sponsored tour of religious places in India twice a year.
  - 3. People of Indian-origin aged 40 to 70 can avail of the benefits under this scheme.
  - 4. The government will bear all the expenses of the trip including the airfare from the group's country of residence.

Question ID : 98958011756  
Status : Answered  
Chosen Option : 2

Q.6  
1 \_\_\_\_\_ wrote the epic Ramcharitmanas.

- Ans
- 1. Tulsidas
  - 2. Veda Vyasa
  - 3. Valmiki
  - 4. Vishnu Sharma

Question ID : 98958011720  
Status : Answered  
Chosen Option : 1

Q.6  
2 According to Container Ports Report, \_\_\_\_\_ is India's only port to be ranked among world's top 30 ports.

- Ans
- 1. Jawaharlal Nehru Port Trust
  - 2. Port Blair
  - 3. Panambur Port
  - 4. Tuticorin Port

Question ID : 98958011726  
Status : Answered  
Chosen Option : 2

Q.6  
3 In January 2019, the Government of India assigned \_\_\_\_\_ as the temporary additional charge of the Finance and Corporate Affairs Ministries in the absence of Finance Minister Arun Jaitley.

- Ans
- 1. Piyush Goyal
  - 2. Shripad Naik
  - 3. Radha Mohan Singh
  - 4. Vijay Kumar Singh

Question ID : 98958011728  
Status : Answered  
Chosen Option : 1

Q.6  
4 S Mirabai Chanu and Virat Kohli were the recipients of the \_\_\_\_\_ for spectacular and outstanding performance in the field of sports.

- Ans
- 1. Maulana Abul Kalam Azad (MAKA) Trophy 2017-18
  - 2. Dhyan Chand Award 2018
  - 3. Rajiv Gandhi Khel Ratna Award 2018
  - 4. Dronacharya Award 2018

Question ID : 98958011715  
Status : Answered  
Chosen Option : 3

Q.6  
5 Metamorphosis in frogs is controlled by:

- Ans
- 1. Adrenalin

2. Thyroxine

3. Melatonin

4. Insulin

Question ID : 98958011719

Status : Answered

Chosen Option : 1

Q.6  
6 What is Vedic name of River Ravi?

Ans  1. Askini

2. Shutudri

3. Parushini

4. Kalindi

Question ID : 98958011755

Status : Not Answered

Chosen Option : --

Q.6  
7 Oxalic acid is found in which of the following?

Ans  1. Amla

2. Lemon

3. Spinach

4. Tamarind

Question ID : 98958011731

Status : Not Attempted and Marked For Review

Chosen Option : --

Q.6  
8 \_\_\_\_\_ is the non-enzymatic reaction between reducing sugars such as glucose and proteins, lipids or nucleic acids.

Ans  1. Phosphorylation

2. Pyruvate oxidation

3. Glycation

4. Cellular respiration

Question ID : 98958011732

Status : Not Answered

Chosen Option : --

Q.6  
9 After his release from jail in 1909, Aurobindo Ghose started two weeklies namely \_\_\_\_\_ and \_\_\_\_\_.

Ans  1. Dainik Jagran in Hindi and Manorama in Malayali

2.

Dainik Jagran in Hindi and Anandabazar Patrika in also Hindi

3. Karmayogin in English and Dharma in Bengali



4. Anandabazar Patrika in Hindi and Manorama in Malayali

Question ID : 98958011708  
Status : Answered  
Chosen Option : 4

Q.7 The Pravasi Teerth Darshan Yojana accords first preference to people of Indian origin and from Girmitiya countries.  
0 Which of the following is NOT one of them?

- Ans
- 1. Guyana
  - 2. Fiji
  - 3. Austria
  - 4. Mauritius

Question ID : 98958011751  
Status : Not Answered  
Chosen Option : --

Q.7 According to an SBI report named \_\_\_\_\_, the government should opt for unconditional cash transfer to farmers to  
1 alleviate agrarian distress rather than the Universal Basic Income (UBI) scheme.

- Ans
- 1. Ecocash
  - 2. Ecoloss
  - 3. Ecowrap
  - 4. EcoTransfer

Question ID : 98958011757  
Status : Answered  
Chosen Option : 1

Q.7 National Girl Child Day is celebrated in India on \_\_\_\_\_.  
2

- Ans
- 1. 9<sup>th</sup> February
  - 2. 24<sup>th</sup> January
  - 3. 21<sup>st</sup> September
  - 4. 23<sup>rd</sup> March

Question ID : 98958011738  
Status : Answered  
Chosen Option : 1

Q.7 What was the theme of National Girl Child Day in 2019?  
3

- Ans
- 1. Empowering Girls for a Brighter Tomorrow
  - 2. Creating a Healthy and Safe Environment for the Girl Child
  - 3. Save Girl Child
  - 4. Sanitation for Girl Child

Question ID : 98958011744

Status : Answered  
Chosen Option : 1

Q.7 As per 'India State of Forest Report (ISFR) 2017', the state of \_\_\_\_\_ has the largest area covered under permanent forest.

- 4  
Ans
- 1. Punjab
  - 2. Arunachal Pradesh
  - 3. Madhya Pradesh
  - 4. Mizoram

Question ID : 98958011723  
Status : Answered  
Chosen Option : 3

Q.7 The total forest and tree cover is \_\_\_\_\_ of geographical area of the country, according to the findings of ISFR 2017.

- 5  
Ans
- 1. 21.67%
  - 2. 24.39%
  - 3. 30.2%
  - 4. 26.4%

Question ID : 98958011748  
Status : Answered  
Chosen Option : 1

Q.7 Marginal cost is directly equal to its \_\_\_\_\_.

- 6  
Ans
- 1. Fixed costs
  - 2. Fixed and variable costs
  - 3. Variable costs
  - 4. Neither fixed nor variable costs

Question ID : 98958011729  
Status : Answered  
Chosen Option : 2

Q.7 Which gas, in its solid state, is known as dry ice?

- 7  
Ans
- 1. Hydrogen
  - 2. Oxygen
  - 3. Carbon-dioxide
  - 4. Nitrogen

Question ID : 98958011717  
Status : Answered  
Chosen Option : 3

Q.7 Olfactory indicators show change in:

8  
Ans

- 1. Physical state
- 2. Smell
- 3. Chemical state
- 4. Color

Question ID : 98958011727  
Status : Answered  
Chosen Option : 3

Q.7 As of January 2019, who is the Minister of Electronics and Information Technology (MeitY)?  
9

- Ans
- 1. DV Sadananda Gowda
  - 2. Ravi Shankar Prasad
  - 3. Raj Nath Singh
  - 4. Suresh Prabhu

Question ID : 98958011741  
Status : Answered  
Chosen Option : 1

Q.8 Kumbh Mela takes place every third year at one of four places by rotation. Which of the following is NOT one of these  
0 places?

- Ans
- 1. Ujjain
  - 2. Haridwar
  - 3. Pune
  - 4. Allahabad (Prayag)

Question ID : 98958011734  
Status : Answered  
Chosen Option : 4

Q.8 Apart from a medal and a citation, in 2018, the Rajiv Gandhi Khel Ratna awardee received a cash prize of ₹ \_\_\_\_\_  
1 while Arjuna, Dronacharya and Dhyan Chand awardees received statuettes, certificates and a cash prize of ₹ \_\_\_\_\_  
each.

- Ans
- 1. 10 lakh, 5 lakh
  - 2. 7.5 lakh, 5 lakh
  - 3. 6 lakh, 2.5 lakh
  - 4. 5 lakh, 2.5 lakh

Question ID : 98958011737  
Status : Answered  
Chosen Option : 2

Q.8 The Indian junior men's skeet team clinched a silver at the ISSF World Championships in \_\_\_\_\_ in 2018  
2

- Ans
- 1. Hungary
  - 2. Argentina

3. South Korea

4. North Korea

Question ID : 98958011747  
Status : Answered  
Chosen Option : 1

Q.8 The Jallianwala Bagh massacre, also known as the Amritsar massacre, took place on \_\_\_\_\_ in Jallianwala Bagh,  
3 Punjab.

Ans  1. 13 April 1919

2. 17 March 1909

3. 4 May 1929

4. 13 August 1867

Question ID : 98958011750  
Status : Answered  
Chosen Option : 1

Q.8 Union Minister for Road Transport & Highways, Shipping Nitin Gadkari inaugurated a 1210-meter span-bridge over the  
4 river \_\_\_\_\_ in Kathua district of Jammu & Kashmir on Jan 2019.

Ans  1. Chenab

2. Ravi

3. Sutlej

4. Jhelum

Question ID : 98958011753  
Status : Not Answered  
Chosen Option : --

Q.8 The Kama Sutra was originally compiled in the 3rd century by the Indian sage \_\_\_\_\_ who lived in northern India.  
5

Ans  1. Kautilya

2. Vatsyayana

3. Veda Vyasa

4. Valmiki

Question ID : 98958011711  
Status : Answered  
Chosen Option : 2

Q.8 According to the 'World Economic Situation and Prospects 2019' report, India's GDP growth is expected to accelerate  
6 to \_\_\_\_\_ % in 2019-20.

Ans  1. 7.6

2. 7.8

3. 8.1

4. 6.5

Question ID : 98958011716

Status : Answered  
Chosen Option : 1

Q.8  
7 Who discovered electromagnetism?

- Ans
- 1. Michael Faraday
  - 2. Hans Christian Oersted
  - 3. James Clerk
  - 4. Andre Ampere

Question ID : 98958011725  
Status : Answered  
Chosen Option : 1

Q.8  
8 Mohandas Gandhi was awarded the Kaisar-i-Hind award in 1915 by \_\_\_\_\_ of Peshur for his contribution to ambulance services in South Africa.

- Ans
- 1. Lord Dalhousie
  - 2. Lord Hardinge
  - 3. Lord Ripon
  - 4. Lord Curzon

Question ID : 98958011724  
Status : Answered  
Chosen Option : 2

Q.8  
9 Who among the following was NOT a recipient of the Arjuna Award 2018?

- Ans
- 1. Neeraj Chopra (Athletics)
  - 2. Gulpreet Kumari (Hockey)
  - 3. Nelakurthi Sikki Reddy (Badminton)
  - 4. Satish Kumar (Boxing)

Question ID : 98958011730  
Status : Not Answered  
Chosen Option : --

Q.9  
0 Who has written the book "Capital and Growth"

- Ans
- 1. A. R. Rodon
  - 2. Kenneth Arrow
  - 3. Adam Smith
  - 4. John Hicks

Question ID : 98958011743  
Status : Not Answered  
Chosen Option : --

Q.9  
1 Tooth enamel is made up of:



- Ans
- 1. Calcium Carbonate
  - 2. Calcium Phosphate
  - 3. Calcium Sulphate
  - 4. Calcium Silicate

Question ID : 98958011746  
Status : Answered  
Chosen Option : 1

Q.9 \_\_\_\_\_ University won the Maulana Abul Kalam Azad (MAKA) Trophy 2017-18.

- Ans
- 1. Tamil Nadu Dr. M.G.R. Medical University
  - 2. University of Hyderabad
  - 3. Guru Nanak Dev University, Amritsar
  - 4. Ramachandra Deemed Medical University, Chennai

Question ID : 98958011754  
Status : Not Answered  
Chosen Option : --

Q.9 The Battle of Plassey was fought on \_\_\_\_\_ between Siraj ud-Daulah and the British East India Company.

- Ans
- 1. 21 June 1780
  - 2. 25 May 1745
  - 3. 23 June 1757
  - 4. 15 September 1765

Question ID : 98958011718  
Status : Answered  
Chosen Option : 3

Q.9 \_\_\_\_\_ is the most abundant molecule in cells, accounting for 70% or more of total cell mass.

- Ans
- 1. Lipids
  - 2. Proteins
  - 3. Water
  - 4. Nucleic acid

Question ID : 98958011733  
Status : Answered  
Chosen Option : 4

Q.9 Ilbert Bill, which was introduced by \_\_\_\_\_, is a controversial measure proposed in 1883.

- Ans
- 1. Lord Curzon
  - 2. Lord Ripon
  - 3. Lord Dalhousie



4. Lord Hastings

Question ID : 98958011713  
Status : Answered  
Chosen Option : 1

Q.9  
6 Which of the following glands is called the master gland of the human body?

- Ans
- 1. Thyroid
  - 2. Liver
  - 3. Pituitary
  - 4. Adrenal

Question ID : 98958011709  
Status : Answered  
Chosen Option : 3

Q.9  
7 In January 2019, researchers from \_\_\_\_\_ revealed that they had recreated space fuel by simulating interstellar conditions in the laboratory.

- Ans
- 1. Indian Institute of Technology-Delhi (IIT-D)
  - 2. Indian Institute of Technology-Kanpur (IIT-K)
  - 3. Indian Institute of Technology-Madras (IIT-M)
  - 4. Indian Institute of Technology-Bombay (IIT-B)

Question ID : 98958011735  
Status : Answered  
Chosen Option : 3

Q.9  
8 The Union government has approved \_\_\_\_\_ Project of the Income Tax Department to enhance the efficiency of income tax administration system in the country.

- Ans
- 1. Innovative E-filing and Centralised Processing Center 2.0
  - 2. Enhanced E-filing and Centralised Processing Center 2.0
  - 3. Interdisciplinary E-filing and Centralised Processing Center 2.0
  - 4. Integrated E-filing and Centralised Processing Center 2.0

Question ID : 98958011714  
Status : Not Answered  
Chosen Option : --

Q.9  
9 Aurobindo Ghose was born in Calcutta (now Kolkata) on \_\_\_\_\_

- Ans
- 1. 15th August, 1972
  - 2. 29<sup>th</sup> October 1765
  - 3. 15th August, 1872
  - 4. 25th September, 1860

Question ID : 98958011712  
Status : Not Answered  
Chosen Option : --

Q.1 The first woman Chief Justice of High Court in India was \_\_\_\_\_.

- Ans
- 1. Fatima Bibi
  - 2. Leila Seth
  - 3. Ruma Pal
  - 4. Indu Malhotra

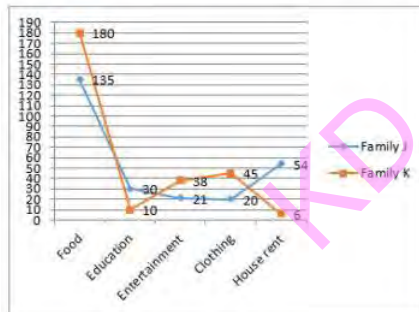
Question ID : 98958011739  
Status : Answered  
Chosen Option : 2

Q.1 The perimeter of floor of a square room is 230 m and height of the room is 5 m. The cost of painting the walls of the room at ₹ 7.50 /m<sup>2</sup> is:

- Ans
- 1. ₹ 3,450
  - 2. ₹ 8,625
  - 3. ₹ 4,312.50
  - 4. ₹ 17,250

Question ID : 98958011270  
Status : Answered  
Chosen Option : 4

Q.1 The line graph shows the monthly expenditure by two families in hundreds:



In the given line graph, if the monthly income of Family K increases to ₹37,200, what will be the increase in expenditure on entertainment? (Assuming they spend the same proportion as before, round off to one decimal)

- Ans
- 1. 43.8
  - 2. 51.9
  - 3. 50.7
  - 4. 46.2

Question ID : 98958011291  
Status : Not Answered  
Chosen Option : --

Q.1 The top of a broken tree touches the ground at an angle of 60° and at a distance of 45 m from the base of the tree. The total height of the tree is: (Use  $\sqrt{3}=1.73$  and  $\sqrt{2}=1.41$ )

- Ans
- 1. 141.3 m
  - 2. 153.45 m
  - 3. 167.85 m
  - 4. 137.24 m

Question ID : 98958011284  
Status : Answered  
Chosen Option : 3

Q.1 21 typists complete a project in 8 days. In how many days 15 typists will complete the project?  
04

- Ans
- 1. 5.8
  - 2. 11.2
  - 3. 9.3
  - 4. 7

Question ID : 98958011263  
Status : Answered  
Chosen Option : 2

Q.1 The average temperature for a week was 30 °C. If the average temperature for first four days of the week was 31 °C,  
05 then the average temperature for the remaining days of the week is:

- Ans
- 1. 29.33 °C
  - 2. 28.5 °C
  - 3. 28.67 °C
  - 4. 29 °C

Question ID : 98958011251  
Status : Answered  
Chosen Option : 3

Q.1 ₹ 7,80,516 is divided among A, B, C and D in the proportion of 2 : 3 : 4 : 3. The share of C is:  
06

- Ans
- 1. ₹ 2,60,172
  - 2. ₹ 1,95,129
  - 3. ₹ 1,30,086
  - 4. ₹ 2,24,562

Question ID : 98958011260  
Status : Answered  
Chosen Option : 1

Q.1 The length, breadth and height of a box are 506 cm, 345 cm and 230 cm respectively. The length of the longest scale  
07 that will measure the three dimensions of the box is:

- Ans
- 1. 23 cm
  - 2. 15 cm
  - 3. 46 cm
  - 4. 30 cm

Question ID : 98958011246  
Status : Not Attempted and Marked For Review  
Chosen Option : --

Q.1  
08 If  $a^3 - b^3 = 416$  and  $a - b = 8$ , then  $(a + b)^2 - ab$  is equal to:

- Ans
- 1. 38
  - 2. 52
  - 3. 42
  - 4. 32

Question ID : 98958011276  
Status : Not Attempted and Marked For Review  
Chosen Option : --

Q.1  
09 What percentage is 3 cm in 12 m?

- Ans
- 1. 0.25
  - 2. 0.025
  - 3. 2.5
  - 4. 25

Question ID : 98958011255  
Status : Answered  
Chosen Option : 1

Q.1  
10 From the monthly income, A spends 24% on household expenses, 16% on entertainment, 12% on education and saves the rest. If savings are ₹ 3,288, the monthly income of A is:

- Ans
- 1. ₹ 6,323
  - 2. ₹ 6,480
  - 3. ₹ 6,850
  - 4. ₹ 6,654

Question ID : 98958011257  
Status : Answered  
Chosen Option : 3

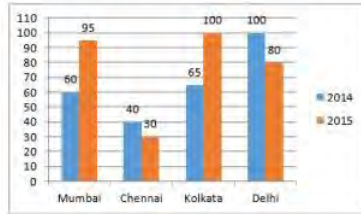
Q.1  
11  $7 - \{4 \times 3 - (-10) \times 8 \div (-4)\}$  is equal to:

- Ans
- 1. -1
  - 2. 53
  - 3. 0
  - 4. 15

Question ID : 98958011248  
Status : Answered  
Chosen Option : 4

Q.1  
12

The given bar chart shows the sales of books (in thousands) in four metro branches of a company for the years 2014 and 2015.



In the given bar-chart, which branch has the highest increase in sale (in %) in 2015 as compared to 2014?

- Ans
- 1. Delhi
  - 2. Chennai
  - 3. Kolkata
  - 4. Mumbai

Question ID : 98958011286

Status : Answered

Chosen Option : 4

Q.1  $\frac{3}{5} \times 4[7 - \{\frac{2}{5} \times (13 + 2)\}]$  is equal to:

- Ans
- 1.  $2\frac{2}{5}$
  - 2.  $\frac{1}{5}$
  - 3. 1
  - 4. 0

Question ID : 98958011249

Status : Answered

Chosen Option : 1

Q.1 ABCD is a cyclic quadrilateral such that AB is a diameter of the circle circumscribing it and angle ADC =  $130^\circ$ . Then angle BAC is equal to:

- Ans
- 1.  $50^\circ$
  - 2.  $60^\circ$
  - 3.  $150^\circ$
  - 4.  $40^\circ$

Question ID : 98958011277

Status : Not Attempted and Marked For Review

Chosen Option : --

Q.1 A and B start walking together from a point. Their steps measure 72 cm and 84 cm respectively. What is the minimum distance they should walk so that each takes exact number of steps?

- Ans
- 1. 2.7 m
  - 2. 3.54 m
  - 3. 6.3 m
  - 4. 5.04 m

Question ID : 98958011247

Status : Not Answered

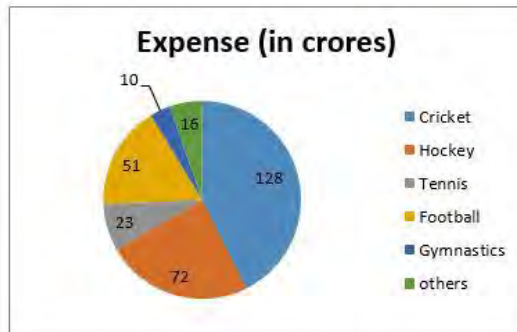
Chosen Option : --

Q.1 16 A sells 12 bicycles at a profit of ₹ 516 per bicycle and sells 3 bicycles at a loss of ₹ 129 per bicycle. If the total profit percentage on all the bicycles sold is 15%, the cost price per bicycle is:

- Ans
- 1. ₹ 2960
  - 2. ₹ 3870
  - 3. ₹ 4440
  - 4. ₹ 2580

Question ID : 98958011258  
Status : Not Answered  
Chosen Option : --

Q.1 17 The given pie-chart depicts the expenditure incurred in crores towards each sport.



In the given pie-chart, what is the ratio of expenditure between hockey and gymnastics?

- Ans
- 1. 64 : 5
  - 2. 16 : 9
  - 3. 24 : 17
  - 4. 36 : 5

Question ID : 98958011290  
Status : Answered  
Chosen Option : 2

Q.1 18 If the surface area of a cube is  $1944 \text{ m}^2$ , its volume is:

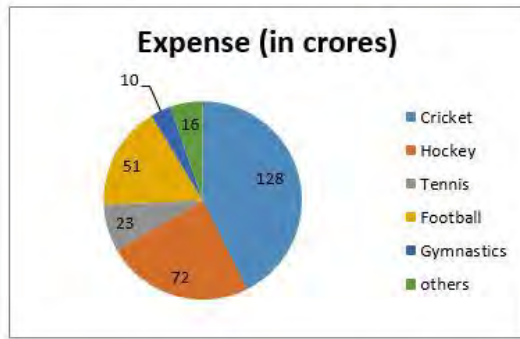
- Ans
- 1.  $2744 \text{ m}^3$
  - 2.  $1648 \text{ m}^3$
  - 3.  $5832 \text{ m}^3$
  - 4.  $4912 \text{ m}^3$

Question ID : 98958011271  
Status : Answered  
Chosen Option : 3

Q.1  
19



The given pie-chart depicts the expenditure incurred in crores towards each sport.



In the given pie-chart, what will be the central angle of the sector representing football?

- Ans
- 1.  $51^\circ$
  - 2.  $61.2^\circ$
  - 3.  $72.2^\circ$
  - 4.  $24^\circ$

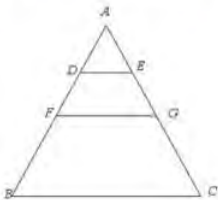
Question ID : 98958011289  
Status : Answered  
Chosen Option : 1

Q.1 PA and PB are two tangents to a circle with centre O, from a point P outside the circle. A and B are points on the circle.  
20 If  $\angle APB = 70^\circ$ , then  $\angle OAB$  is equal to:

- Ans
- 1.  $35^\circ$
  - 2.  $50^\circ$
  - 3.  $25^\circ$
  - 4.  $20^\circ$

Question ID : 98958011278  
Status : Answered  
Chosen Option : 1

Q.1 In the triangle given below, D and E are mid points of AF and AG respectively, F and G are mid points of AB and AC respectively. If  $DE = 2.4$  cm, then BC is equal to:  
21



- Ans
- 1. 9.6 cm
  - 2. 7.2 cm
  - 3. 4.8 cm
  - 4. 3.6 cm

Question ID : 98958011279  
Status : Answered  
Chosen Option : 1

Q.1 A mobile cover costing ₹ 264 is available at a discount of 12%. What would be the selling price of 4 such mobile covers?

22

- Ans
- 1. ₹ 936.72
  - 2. ₹ 929.28
  - 3. ₹ 940.46
  - 4. ₹ 934.04

Question ID : 98958011253  
Status : Answered  
Chosen Option : 2

Q.1  
23 The number 30744 is divisible by which of the single digit numbers:

- Ans
- 1. All numbers except 5 and 7
  - 2. Only by 2, 3, 6 and 9
  - 3. Only by 2, 3 and 6
  - 4. All numbers except 5

Question ID : 98958011245  
Status : Answered  
Chosen Option : 2

Q.1  
24 A ladder leaning against a wall makes an angle of  $60^\circ$  with the horizontal. If the foot of the ladder is 10 m away from the wall, what is the length of the ladder?

- Ans
- 1. 34.6 m
  - 2. 17.3 m
  - 3. 20 m
  - 4. 40 m

Question ID : 98958011283  
Status : Answered  
Chosen Option : 2

Q.1  
25 If  $x + \frac{1}{x} = 4\sqrt{3}$ , then  $x^2 + \frac{1}{x^2}$  is equal to:

- Ans
- 1. 52
  - 2. 46
  - 3. 44
  - 4. 56

Question ID : 98958011275  
Status : Answered  
Chosen Option : 2

Q.1  
26 A girl walks to school from her house at 5 km/h speed for 24 minutes and cycles back the same distance at 8 km/h. The time taken to cycle back is:

- Ans
- 1. 8 minutes
  - 2. 10 minutes
  - 3. 21 minutes

✓ 4. 15 minutes

Question ID : 98958011268  
Status : Answered  
Chosen Option : 4

Q.1 A pipe can fill a tank in 32 minutes. Due to a leakage, the tank gets filled in 48 minutes. The time the leakage will take to empty the full tank is:

- Ans
- ✗ 1. 1 hour 20 minutes
  - ✓ 2. 1 hour 36 minutes
  - ✗ 3. 1 hour 42 minutes
  - ✗ 4. 1 hour 56 minutes

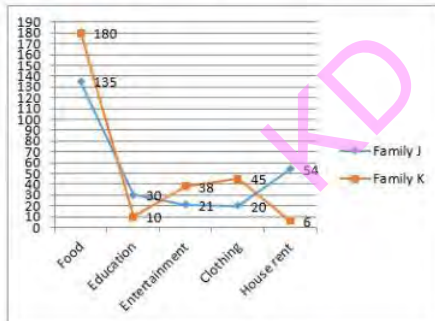
Question ID : 98958011265  
Status : Answered  
Chosen Option : 2

Q.1 A diagonal of a quadrilateral is 40 cm. The length of the perpendiculars from opposite vertices is 7.5 cm and 8.6 cm. The area of the quadrilateral is:

- Ans
- ✗ 1. 288 cm<sup>2</sup>
  - ✓ 2. 322 cm<sup>2</sup>
  - ✗ 3. 434 cm<sup>2</sup>
  - ✗ 4. 368 cm<sup>2</sup>

Question ID : 98958011273  
Status : Answered  
Chosen Option : 2

Q.1 The line graph shows the monthly expenditure by two families in hundreds:



In the given line graph, what is the difference in percentage of spending on food between Family J and K?

- Ans
- ✓ 1. 12.6%
  - ✗ 2. 13.7%
  - ✗ 3. 14.9%
  - ✗ 4. 15.2%

Question ID : 98958011292  
Status : Answered  
Chosen Option : 3

30 The speed of a boat in still water is 6 km/h. If it takes four times as much time as going upstream as in going same distance downstream, the speed of the stream is:

- Ans
- 1. 5 km/h
  - 2. 4.2 km/h
  - 3. 3.6 km/h
  - 4. 2.5 km/h

Question ID : 98958011267  
 Status : Answered  
 Chosen Option : 1

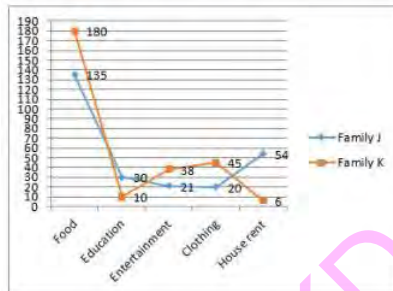
Q.1  
 31 If  $4\tan\theta = 3$ ,  $\frac{5\sin\theta - 3\cos\theta}{5\sin\theta + 3\cos\theta}$  is equal to:

- Ans
- 1.  $\frac{1}{3}$
  - 2. 9
  - 3. 3
  - 4.  $\frac{1}{9}$

Question ID : 98958011282  
 Status : Answered  
 Chosen Option : 4

Q.1 The line graph shows the monthly expenditure by two families in hundreds:

32



In the given line graph, what is the ratio of the difference in spending between food and education for family J and K?

- Ans
- 1. 21 : 34
  - 2. 9 : 2
  - 3. 13 : 25
  - 4. 31 : 36

Question ID : 98958011293  
 Status : Answered  
 Chosen Option : 1

Q.1  
 33 If  $(2x - 5)^3 + (x - 4)^3 + (x - 11)^3 = 3(2x - 5)(x - 4)(x - 11)$ , then what is the value of  $x$ ?

- Ans
- 1. 18
  - 2. 3
  - 3. 5
  - 4. 7

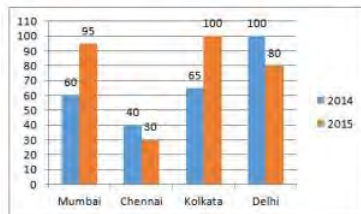
Question ID : 98958011274  
Status : Not Answered  
Chosen Option : --

Q.1 34 What is the difference between the greatest four digit and the smallest four digit number using the digits 2, 9, 6 and 5 (each digit can be used only once)?

- Ans
- 1. 6993
  - 2. 7056
  - 3. 6606
  - 4. 7083

Question ID : 98958011250  
Status : Not Answered  
Chosen Option : --

Q.1 35 The given bar chart shows the sales of books (in thousands) in four metro branches of a company for the years 2014 and 2015.



In the given bar-chart, calculate the percentage increment of sales between the year 2014 and 2015 (round off to one decimal).

- Ans
- 1. 15.1%
  - 2. 13.7
  - 3. 14.9%
  - 4. 14.5

Question ID : 98958011285  
Status : Answered  
Chosen Option : 1

Q.1 36 A trader marks the cost of a car 24% above its price and allows a discount of 15%. If the discount is ₹ 2,23,200, then the cost price of the car is:

- Ans
- 1. ₹ 11,60,000
  - 2. ₹ 15,80,000
  - 3. ₹ 14,25,000
  - 4. ₹ 12,00,000

Question ID : 98958011254  
Status : Not Answered  
Chosen Option : --

Q.1 37 Which of the following solids has the highest number of vertices?

- Ans
- 1. Cuboid
  - 2. Hexagonal pyramid

3. Triangular Prism

4. Tetrahedron

Question ID : 98958011269  
Status : Answered  
Chosen Option : 2

Q.1 The volume of wood required to make a closed box of thickness 2.5 cm with external dimensions  $90\text{ cm} \times 75\text{ cm} \times 50\text{ cm}$  is:  
38

Ans  1.  $46720\text{ cm}^3$

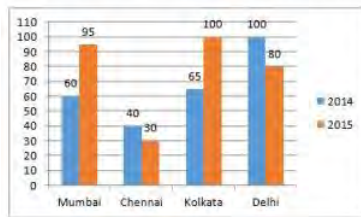
2.  $69750\text{ cm}^3$

3.  $36170\text{ cm}^3$

4.  $49050\text{ cm}^3$

Question ID : 98958011272  
Status : Not Answered  
Chosen Option : --

Q.1 The given bar chart shows the sales of books (in thousands) in four metro branches of a company for the years 2014 and 2015.  
39



In the given bar-chart, the ratio of total sales between Mumbai and Delhi is:

Ans  1. 33 : 37

2. 23 : 25

3. 26 : 29

4. 31 : 36

Question ID : 98958011287  
Status : Answered  
Chosen Option : 4

Q.1 On what sum of money, the interest for one year at 12% p.a. compounded half yearly is ₹ 1,545?  
40

Ans  1. ₹ 25,750

2. ₹ 24,300

3. ₹ 12,875

4. ₹ 12,500

Question ID : 98958011262  
Status : Answered  
Chosen Option : 4

Q.1 Three pipes X, Y and Z discharge three different chemicals A, B and C in a tank. The pipes can fill the tank in 20, 25 and 40 minutes respectively. What will be the proportion of chemical B in the tank, if all the pipes are open for 10 minutes?  
41



- Ans
- 1.  $\frac{4}{7}$
  - 2.  $\frac{13}{23}$
  - 3.  $\frac{8}{23}$
  - 4.  $\frac{11}{15}$

Question ID : 98958011266  
Status : Answered  
Chosen Option : 3

Q.1  
42  $\sqrt{4 + \sqrt{144}}$  is equal to:

- Ans
- 1. 3.74
  - 2. 14
  - 3. 12.17
  - 4. 4

Question ID : 98958011244  
Status : Answered  
Chosen Option : 4

Q.1  
43 ₹ 2,64,000 is invested for 3 years at 8.25% p.a. simple interest. The interest is:

- Ans
- 1. ₹ 87,120
  - 2. ₹ 43,560
  - 3. ₹ 21,780
  - 4. ₹ 65,340

Question ID : 98958011261  
Status : Not Answered  
Chosen Option : --

Q.1  
44  $(1 + \cot^2\theta)(1 - \cos^2\theta)$  is equal to:

- Ans
- 1. 0
  - 2.  $\frac{1}{2}$
  - 3. 1
  - 4. Not defined

Question ID : 98958011281  
Status : Answered  
Chosen Option : 3

Q.1  
45 The efficiency of A is thrice as that of B and efficiency of B is twice as that of C. If B alone can finish a work in 15 days, in how many days A and C together will complete that work?

- Ans
- 1.  $6\frac{1}{2}$

2.  $4\frac{1}{3}$

3.  $4\frac{2}{7}$

4.  $7\frac{4}{5}$

Question ID : 98958011264

Status : Answered

Chosen Option : 3

Q.1 Nidhi scores 62 marks in Mathematics, 70 in English, 74 in Science. What should be her score in Social Sciences so that she gets an overall 68%?  
46

Ans  1. 67

2. 66

3. 65

4. 68

Question ID : 98958011256

Status : Not Answered

Chosen Option : --

Q.1 There are 50 paise, 25 paise and ₹ 1 coins in a bag in the ratio 5 : 8 : 1. If the total value of all the coins is ₹ 55, how many 25 paise coins are there in the bag?  
47

Ans  1. 10

2. 80

3. 50

4. 25

Question ID : 98958011259

Status : Not Answered

Chosen Option : --

Q.1 The angles of a triangle are  $2x - 3$ ,  $x + 12$ ,  $x - 1$ . The largest angle of the triangle is:  
48

Ans  1. 42

2. 83

3. 94

4. 55

Question ID : 98958011280

Status : Answered

Chosen Option : 2

Q.1 A boy walks from his house to the park which is 500 m away in 5 minutes and walks back in 7 minutes. His average speed (in km/h) is:  
49

Ans  1. 1

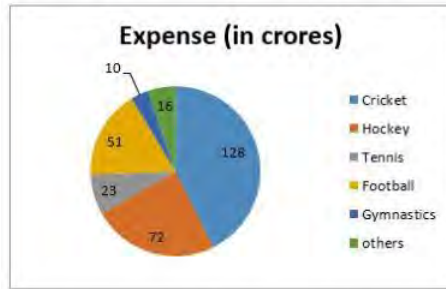
2. 12

3. 5

4. 2.5

Question ID : 98958011252  
Status : Not Answered  
Chosen Option : --

Q.1 The given pie-chart depicts the expenditure incurred in crores towards each sport.  
50



In the given pie-chart, what is the difference between the expenditure incurred on cricket and football?

- Ans
- 1. 77
  - 2. 49
  - 3. 56
  - 4. 21

Question ID : 98958011288  
Status : Answered  
Chosen Option : 1

Q.1 Identify the segment in the sentence, which contains the grammatical error.  
51

This is the boy which took away the books.

- Ans
- 1. the books
  - 2. This is
  - 3. which took away
  - 4. the boy

Question ID : 98958011396  
Status : Answered  
Chosen Option : 3

Q.1 Select the synonym of the given word.  
52

VAGABOND

- Ans
- 1. tramp
  - 2. tourist
  - 3. visitor
  - 4. pilgrim

Question ID : 98958011417  
Status : Answered  
Chosen Option : 1

Q.1  
53 Select the most appropriate word for the given group of words.

extreme fear of water

- Ans
- 1. kleptomania
  - 2. claustrophobia
  - 3. insomnia
  - 4. hydrophobia

Question ID : 98958011434  
Status : Answered  
Chosen Option : 4

Q.1  
54 Select the antonym of the given word.

ENIGMATIC

- Ans
- 1. straightforward
  - 2. inscrutable
  - 3. ambiguous
  - 4. mysterious

Question ID : 98958011426  
Status : Answered  
Chosen Option : 3

Q.1  
55 Select the most appropriate word to fill in the blank.

Kavya picked up all the toys and put \_\_\_\_\_ in a box.

- Ans
- 1. it
  - 2. them
  - 3. this
  - 4. that

Question ID : 98958011409  
Status : Answered  
Chosen Option : 2

Q.1  
56 Select the most appropriate meaning of the given idiom.

in a nutshell

- Ans
- 1. in serious trouble
  - 2. in disgrace

3. in control

4. in short

Question ID : 98958011429  
Status : Answered  
Chosen Option : 4

Q.1 57 Select the most appropriate option to substitute the underlined segment in the given sentence. If there is no need to substitute it, select No improvement.

Make sure that all the equipment has put away properly.

Ans  1. all the equipments have put away

2. all the equipment be putting away

3. No improvement.

4. all the equipment is put away

Question ID : 98958011401  
Status : Answered  
Chosen Option : 3

Q.1 58 Select the antonym of the given word.

SOMBER

Ans  1. calm

2. cheerful

3. serious

4. grim

Question ID : 98958011423  
Status : Answered  
Chosen Option : 2

Q.1 59 Select the most appropriate word to fill in the blanks.

The new typist is \_\_\_\_\_ efficient \_\_\_\_\_ the previous one.

Ans  1. as; as

2. so; that

3. as; so

4. such; as

Question ID : 98958011408  
Status : Answered  
Chosen Option : 1

Q.1  
60

Select the synonym of the given word.

FAKE

- Ans
- 1. genuine
  - 2. false
  - 3. real
  - 4. factual

Question ID : 98958011418  
Status : Answered  
Chosen Option : 2

Q.1 Identify the segment in the sentence, which contains the grammatical error.

61

I was not able to solve the questions as I was not knowing the answers.

- Ans
- 1. was not knowing
  - 2. the answers
  - 3. able to solve
  - 4. I was not

Question ID : 98958011398  
Status : Answered  
Chosen Option : 1

Q.1 Select the most appropriate option to substitute the underlined segment in the given sentence. If there is no need to substitute it, select No improvement.

62

He didn't explain a great deal concerned the scheme though he spoke for a long time.

- Ans
- 1. a great deal to be concerned the scheme
  - 2. No improvement.
  - 3. a great deal concerning the scheme
  - 4. a great deal as concerning as the scheme

Question ID : 98958011403  
Status : Answered  
Chosen Option : 3

Comprehension:



Read the following passage and answer the questions given after it.

At least 200 species of 'mega fauna' are declining in number, finds research. Humans' meat-eating habits may be pushing at least 150 species of the planet's largest animals towards the threat of extinction, a study has found. The research was published in the journal Conservation Letters. Of nearly 300 species studied, 70 per cent are in decline, and 59 per cent of the species are threatened with disappearing from the globe, said William Ripple, a professor at the Oregon State University in the US.

"Direct harvest for human consumption of meat or body parts is the biggest danger to nearly all of the large species with threat data available," Ripple said. "Thus, minimising the direct killing of these vertebrate animals is an important conservation tactic that might save many of these iconic species as well as all of the contributions they make to their ecosystems," said Ripple.

Researchers were part of an international collaboration that built a list of mega fauna based on body size and taxonomy — qualifying for the list were species unusually large in comparison to other species in the same class. The mass thresholds the researchers decided on were 100 kg for mammals, ray-finned fish and cartilaginous fish and 40 kg for amphibians, birds and reptiles since species within these classes are generally smaller.

Over the past 500 years, as humans' ability to kill wildlife at a safe distance has become highly refined, two per cent of mega fauna species have gone extinct. For all sizes of vertebrates, the figure is 0.8 per cent. "Our results suggest we're in the process of eating mega fauna to extinction," Ripple said. "Through the consumption of various body parts, users of Asian traditional medicine also exert heavy tolls on the largest species," he said. "In the future, 70 per cent will experience further population decline and 60 per cent of the species could become extinct or very rare," he added.

Nine mega fauna species have either gone extinct overall, or gone extinct in all wild habitats, in the past 250 years, including two species of giant tortoise, one of which disappeared in 2012, and two species of deer. "In addition to intentional harvesting, a lot of land animals get accidentally caught in snares and traps, and the same is true of gillnets, trawls and longlines in aquatic systems," Ripple said. "And there's also habitat degradation to contend with. When taken together, these threats can have major negative cumulative effects on vertebrate species," he said.

SubQuestion No : 163

Q.1  
63 The theme of the passage is

- Ans
- 1. over the last 500 years humans have become skillful in killing animals
  - 2. animals are becoming extinct due to the destruction of their habitat.
  - 3. the human appetite is driving many animals to extinction

- ✘ 4. survival of vertebrates is important for the conservation of the ecosystem.

Question ID : 98958011443

Status : Answered

Chosen Option : 3

Comprehension:

Read the following passage and answer the questions given after it.

At least 200 species of ‘mega fauna’ are declining in number, finds research. Humans’ meat-eating habits may be pushing at least 150 species of the planet’s largest animals towards the threat of extinction, a study has found. The research was published in the journal Conservation Letters. Of nearly 300 species studied, 70 per cent are in decline, and 59 per cent of the species are threatened with disappearing from the globe, said William Ripple, a professor at the Oregon State University in the US.

“Direct harvest for human consumption of meat or body parts is the biggest danger to nearly all of the large species with threat data available,” Ripple said. “Thus, minimising the direct killing of these vertebrate animals is an important conservation tactic that might save many of these iconic species as well as all of the contributions they make to their ecosystems,” said Ripple.

Researchers were part of an international collaboration that built a list of mega fauna based on body size and taxonomy — qualifying for the list were species unusually large in comparison to other species in the same class. The mass thresholds the researchers decided on were 100 kg for mammals, ray-finned fish and cartilaginous fish and 40 kg for amphibians, birds and reptiles since species within these classes are generally smaller.

Over the past 500 years, as humans’ ability to kill wildlife at a safe distance has become highly refined, two per cent of mega fauna species have gone extinct. For all sizes of vertebrates, the figure is 0.8 per cent. “Our results suggest we’re in the process of eating mega fauna to extinction,” Ripple said. “Through the consumption of various body parts, users of Asian traditional medicine also exert heavy tolls on the largest species,” he said. “In the future, 70 per cent will experience further population decline and 60 per cent of the species could become extinct or very rare,” he added.

Nine mega fauna species have either gone extinct overall, or gone extinct in all wild habitats, in the past 250 years, including two species of giant tortoise, one of which disappeared in 2012, and two species of deer. “In addition to intentional harvesting, a lot of land animals get accidentally caught in snares and traps, and the same is true of gillnets, trawls and longlines in aquatic systems,” Ripple said. “And there’s also habitat degradation to contend with. When taken together, these threats can have major negative cumulative effects on vertebrate species,” he said.

Q.1  
64 Which of the following falls in the 40 kg category?

- Ans
- 1. ray-finned fish
  - 2. mammals
  - 3. cartilaginous fish
  - 4. amphibians

Question ID : 98958011444  
Status : Answered  
Chosen Option : 4

Comprehension:

KD JOB UPDATES



Read the following passage and answer the questions given after it.

At least 200 species of 'mega fauna' are declining in number, finds research. Humans' meat-eating habits may be pushing at least 150 species of the planet's largest animals towards the threat of extinction, a study has found. The research was published in the journal Conservation Letters. Of nearly 300 species studied, 70 per cent are in decline, and 59 per cent of the species are threatened with disappearing from the globe, said William Ripple, a professor at the Oregon State University in the US.

"Direct harvest for human consumption of meat or body parts is the biggest danger to nearly all of the large species with threat data available," Ripple said. "Thus, minimising the direct killing of these vertebrate animals is an important conservation tactic that might save many of these iconic species as well as all of the contributions they make to their ecosystems," said Ripple.

Researchers were part of an international collaboration that built a list of mega fauna based on body size and taxonomy — qualifying for the list were species unusually large in comparison to other species in the same class. The mass thresholds the researchers decided on were 100 kg for mammals, ray-finned fish and cartilaginous fish and 40 kg for amphibians, birds and reptiles since species within these classes are generally smaller.

Over the past 500 years, as humans' ability to kill wildlife at a safe distance has become highly refined, two per cent of mega fauna species have gone extinct. For all sizes of vertebrates, the figure is 0.8 per cent. "Our results suggest we're in the process of eating mega fauna to extinction," Ripple said. "Through the consumption of various body parts, users of Asian traditional medicine also exert heavy tolls on the largest species," he said. "In the future, 70 per cent will experience further population decline and 60 per cent of the species could become extinct or very rare," he added.

Nine mega fauna species have either gone extinct overall, or gone extinct in all wild habitats, in the past 250 years, including two species of giant tortoise, one of which disappeared in 2012, and two species of deer. "In addition to intentional harvesting, a lot of land animals get accidentally caught in snares and traps, and the same is true of gillnets, trawls and longlines in aquatic systems," Ripple said. "And there's also habitat degradation to contend with. When taken together, these threats can have major negative cumulative effects on vertebrate species," he said.

SubQuestion No : 165

Q.1  
65 How many species of mega fauna are facing extinction as a result of the direct human consumption?

- Ans
- 1. 200 species
  - 2. 150 species
  - 3. 300 species
  - 4. 250 species

Comprehension:

Read the following passage and answer the questions given after it.

At least 200 species of ‘mega fauna’ are declining in number, finds research. Humans’ meat-eating habits may be pushing at least 150 species of the planet’s largest animals towards the threat of extinction, a study has found. The research was published in the journal Conservation Letters. Of nearly 300 species studied, 70 per cent are in decline, and 59 per cent of the species are threatened with disappearing from the globe, said William Ripple, a professor at the Oregon State University in the US.

“Direct harvest for human consumption of meat or body parts is the biggest danger to nearly all of the large species with threat data available,” Ripple said. “Thus, minimising the direct killing of these vertebrate animals is an important conservation tactic that might save many of these iconic species as well as all of the contributions they make to their ecosystems,” said Ripple.

Researchers were part of an international collaboration that built a list of mega fauna based on body size and taxonomy — qualifying for the list were species unusually large in comparison to other species in the same class. The mass thresholds the researchers decided on were 100 kg for mammals, ray-finned fish and cartilaginous fish and 40 kg for amphibians, birds and reptiles since species within these classes are generally smaller.

Over the past 500 years, as humans’ ability to kill wildlife at a safe distance has become highly refined, two per cent of mega fauna species have gone extinct. For all sizes of vertebrates, the figure is 0.8 per cent. “Our results suggest we’re in the process of eating mega fauna to extinction,” Ripple said. “Through the consumption of various body parts, users of Asian traditional medicine also exert heavy tolls on the largest species,” he said. “In the future, 70 per cent will experience further population decline and 60 per cent of the species could become extinct or very rare,” he added.

Nine mega fauna species have either gone extinct overall, or gone extinct in all wild habitats, in the past 250 years, including two species of giant tortoise, one of which disappeared in 2012, and two species of deer. “In addition to intentional harvesting, a lot of land animals get accidentally caught in snares and traps, and the same is true of gillnets, trawls and longlines in aquatic systems,” Ripple said. “And there’s also habitat degradation to contend with. When taken together, these threats can have major negative cumulative effects on vertebrate species,” he said.

SubQuestion No : 166

Q.1 “Intentional harvesting” refers to

66

Ans

- 1. the killing of animals deliberately
- 2. accidental killing of animals in traps and snares
- 3. killing of animals due to habitat degradation
- 4. killing of animals for one's safety

Question ID : 98958011446  
Status : Answered  
Chosen Option : 2

Comprehension:

KD JOB UPDATES



Read the following passage and answer the questions given after it.

At least 200 species of 'mega fauna' are declining in number, finds research. Humans' meat-eating habits may be pushing at least 150 species of the planet's largest animals towards the threat of extinction, a study has found. The research was published in the journal Conservation Letters. Of nearly 300 species studied, 70 per cent are in decline, and 59 per cent of the species are threatened with disappearing from the globe, said William Ripple, a professor at the Oregon State University in the US.

"Direct harvest for human consumption of meat or body parts is the biggest danger to nearly all of the large species with threat data available," Ripple said. "Thus, minimising the direct killing of these vertebrate animals is an important conservation tactic that might save many of these iconic species as well as all of the contributions they make to their ecosystems," said Ripple.

Researchers were part of an international collaboration that built a list of mega fauna based on body size and taxonomy — qualifying for the list were species unusually large in comparison to other species in the same class. The mass thresholds the researchers decided on were 100 kg for mammals, ray-finned fish and cartilaginous fish and 40 kg for amphibians, birds and reptiles since species within these classes are generally smaller.

Over the past 500 years, as humans' ability to kill wildlife at a safe distance has become highly refined, two per cent of mega fauna species have gone extinct. For all sizes of vertebrates, the figure is 0.8 per cent. "Our results suggest we're in the process of eating mega fauna to extinction," Ripple said. "Through the consumption of various body parts, users of Asian traditional medicine also exert heavy tolls on the largest species," he said. "In the future, 70 per cent will experience further population decline and 60 per cent of the species could become extinct or very rare," he added.

Nine mega fauna species have either gone extinct overall, or gone extinct in all wild habitats, in the past 250 years, including two species of giant tortoise, one of which disappeared in 2012, and two species of deer. "In addition to intentional harvesting, a lot of land animals get accidentally caught in snares and traps, and the same is true of gillnets, trawls and longlines in aquatic systems," Ripple said. "And there's also habitat degradation to contend with. When taken together, these threats can have major negative cumulative effects on vertebrate species," he said.

SubQuestion No : 167

Q.1  
67 Which statement is NOT true according to the passage?

Ans

- 1. In the future, 80 per cent of the species could become extinct or very rare.
- 2. Of the 300 species studied, 59 per cent are threatened with disappearing from the globe.

3. Nine mega fauna species have gone extinct in the past 250 years.

4. Two per cent of mega fauna species have gone extinct due to killing by humans.

Question ID : 98958011447  
Status : Answered  
Chosen Option : 2

Q.1  
68 Select the most appropriate word for the given group of words.

someone who is satisfied with life in general.

- Ans
- 1. cooperative
  - 2. contented
  - 3. contentious
  - 4. contemplative

Question ID : 98958011432  
Status : Answered  
Chosen Option : 2

Q.1  
69 Select the most appropriate word for the given group of words.

obsession with one particular thing

- Ans
- 1. pyromania
  - 2. monomania
  - 3. hypomania
  - 4. insomnia

Question ID : 98958011436  
Status : Answered  
Chosen Option : 2

Q.1  
70 Identify the segment in the sentence, which contains the grammatical error.

Until I do not get the loan, I cannot set up my business.

- Ans
- 1. I cannot
  - 2. get the loan
  - 3. do not
  - 4. set up

Question ID : 98958011399  
Status : Answered  
Chosen Option : 3

Q.1 71 Select the most appropriate word for the given group of words.

a sum of money added to a person's wages as a reward for good performance.

- Ans
- 1. allowance
  - 2. remuneration
  - 3. bonus
  - 4. wages

Question ID : 98958011433  
Status : Answered  
Chosen Option : 1

Q.1 72 Select the synonym of the given word.

EXTRICATE

- Ans
- 1. intricate
  - 2. remove
  - 3. delete
  - 4. complicate

Question ID : 98958011420  
Status : Answered  
Chosen Option : 2

Q.1 73 Select the synonym of the given word.

SUBSTITUTE

- Ans
- 1. avoid
  - 2. reserve
  - 3. replace
  - 4. displace

Question ID : 98958011419  
Status : Answered  
Chosen Option : 3

Q.1 74 Identify the segment in the sentence, which contains the grammatical error.

Hardly he had stepped out of the house when a tree fell on the roof.

- Ans
- 1. out of
  - 2. when a tree
  - 3. Hardly he had
  - 4. fell on the roof

Question ID : 98958011400

Status : Answered

Chosen Option : 3

Q.1  
75 Select the most appropriate word to fill in the blank.

If I meet him, I \_\_\_\_\_ give him your message.

- Ans
- 1. should
  - 2. could
  - 3. will
  - 4. would

Question ID : 98958011406

Status : Answered

Chosen Option : 3

Q.1  
76 Select the antonym of the given word.

CONCENTRATED

- Ans
- 1. diluted
  - 2. strong
  - 3. potent
  - 4. thick

Question ID : 98958011424

Status : Answered

Chosen Option : 1

Q.1  
77 Select the wrongly spelt word.

- Ans
- 1. dwarf
  - 2. dwelling
  - 3. durable
  - 4. dwindel

Question ID : 98958011437

Status : Answered

Chosen Option : 4

Q.1  
78 Select the antonym of the given word.

HIDEOUS

- Ans
- 1. grim
  - 2. ideal



3. charming

4. ugly

Question ID : 98958011422  
Status : Answered  
Chosen Option : 2

Q.1 79 Select the most appropriate meaning of the given idiom.

A fish out of water

Ans  1. in the absence of something

2. feeling sick

3. in unfamiliar circumstances

4. ready to die

Question ID : 98958011430  
Status : Answered  
Chosen Option : 3

Q.1 80 Select the wrongly spelt word.

Ans  1. expansive

2. exhibition

3. exhausted

4. expantiture

Question ID : 98958011441  
Status : Answered  
Chosen Option : 4

Q.1 81 Select the most appropriate option to substitute the underlined segment in the given sentence. If there is no need to substitute it, select No improvement.

Each person watching the procession was provided with a flag.

Ans  1. No improvement.

2. watched the procession

3. having watched the procession was provided

4. to watching the procession

Question ID : 98958011404  
Status : Answered  
Chosen Option : 1

Q.1 82 Identify the segment in the sentence, which contains the grammatical error.

These stray cattles are roaming around the town.

Ans  1. stray cattles

- 2. the town.
- 3. are roaming around
- 4. These

Question ID : 98958011397  
Status : Answered  
Chosen Option : 1

Q.1  
83 Select the most appropriate meaning of the given idiom.

can't cut the mustard

- Ans
- 1. to win a victory
  - 2. to be unable to do a job
  - 3. to be successful
  - 4. to render a service

Question ID : 98958011431  
Status : Answered  
Chosen Option : 2

Q.1  
84 Select the antonym of the given word.

VIGOROUS

- Ans
- 1. enthusiastic
  - 2. spiritless
  - 3. forceful
  - 4. energetic

Question ID : 98958011425  
Status : Answered  
Chosen Option : 2

Q.1  
85 Select the wrongly spelt word.

- Ans
- 1. fragmentation
  - 2. frustrated
  - 3. fugitive
  - 4. fundamantal

Question ID : 98958011440  
Status : Answered  
Chosen Option : 4

Q.1  
86



Select the most appropriate meaning of the given idiom.

a dog's life

- Ans
- 1. a life spent in guarding something
  - 2. a life full of freedom
  - 3. a miserable existence
  - 4. a restful life

Question ID : 98958011427  
Status : Answered  
Chosen Option : 3

Q.1  
87 Select the most appropriate word to fill in the blank.

It is not safe for children to \_\_\_\_\_ on the road.

- Ans
- 1. playing
  - 2. play
  - 3. plays
  - 4. played

Question ID : 98958011410  
Status : Answered  
Chosen Option : 2

Q.1  
88 Select the most appropriate meaning of the given idiom.

Miss the boat

- Ans
- 1. accept defeat
  - 2. lose courage
  - 3. lose an opportunity
  - 4. be too slow

Question ID : 98958011428  
Status : Answered  
Chosen Option : 3

Q.1  
89 Select the synonym of the given word.

GRATUITOUS

- Ans
- 1. unnecessary
  - 2. grateful
  - 3. confidential

4. voluntary

Question ID : 98958011421  
Status : Answered  
Chosen Option : 2

Q.1  
90 Select the most appropriate word for the given group of words.

an apparatus for reducing or increasing the voltage of an alternating current.

- Ans
- 1. transformer
  - 2. transparent
  - 3. transonic
  - 4. translucent

Question ID : 98958011435  
Status : Answered  
Chosen Option : 1

Q.1  
91 Select the wrongly spelt word.

- Ans
- 1. hasten
  - 2. hostile
  - 3. hospitable
  - 4. humanitariun

Question ID : 98958011439  
Status : Answered  
Chosen Option : 4

Q.1  
92 Select the most appropriate option to substitute the underlined segment in the given sentence. If there is no need to substitute it, select No improvement.

Yesterday I saw my brother to repair his friend's bicycle.

- Ans
- 1. No improvement.
  - 2. my brother repair his friend's bicycle
  - 3. my brother repairs his friend's bicycle
  - 4. my brother having repaired his friend's bicycle

Question ID : 98958011402  
Status : Answered  
Chosen Option : 2

Comprehension:

In the following passage some words have been deleted. Fill in the blanks with the help of the alternatives given. Select the most appropriate option for each number.

The last mammoths, who were very large elephant-like animals, lived as recently as 4,000 years ago. \_\_\_\_\_ (1) their well-preserved bodies can be \_\_\_\_\_ (2) frozen in the tundra of Siberia. Because \_\_\_\_\_ (3) bodies were so well protected from decay \_\_\_\_\_ (4) the permafrost, their genetic material remained intact. \_\_\_\_\_ (5) at Harvard University are researching ways to bring the mammoth back to life.

SubQuestion No : 193

Q.1  
93 Select the most appropriate option to fill in blank No.1.

- Ans
- 1. And
  - 2. So
  - 3. But
  - 4. Because

Question ID : 98958011412  
Status : Answered  
Chosen Option : 1

Comprehension:

In the following passage some words have been deleted. Fill in the blanks with the help of the alternatives given. Select the most appropriate option for each number.

The last mammoths, who were very large elephant-like animals, lived as recently as 4,000 years ago. \_\_\_\_\_ (1) their well-preserved bodies can be \_\_\_\_\_ (2) frozen in the tundra of Siberia. Because \_\_\_\_\_ (3) bodies were so well protected from decay \_\_\_\_\_ (4) the permafrost, their genetic material remained intact. \_\_\_\_\_ (5) at Harvard University are researching ways to bring the mammoth back to life.

SubQuestion No : 194

Q.1  
94 Select the most appropriate option to fill in blank No.2.

- Ans
- 1. unearthed
  - 2. found
  - 3. got
  - 4. uncovered

Question ID : 98958011413  
Status : Answered  
Chosen Option : 2

Comprehension:

In the following passage some words have been deleted. Fill in the blanks with the help of the alternatives given. Select the most appropriate option for each number.

The last mammoths, who were very large elephant-like animals, lived as recently as 4,000 years ago. \_\_\_\_\_ (1) their well-preserved bodies can be \_\_\_\_\_ (2) frozen in the tundra of Siberia. Because \_\_\_\_\_ (3) bodies were so well protected from decay \_\_\_\_\_ (4) the permafrost, their genetic material remained intact. \_\_\_\_\_ (5) at Harvard University are researching ways to bring the mammoth back to life.

SubQuestion No : 195

Q.1  
95 Select the most appropriate option to fill in blank No.3.

- Ans
- 1. they
  - 2. them
  - 3. their
  - 4. its

Question ID : 98958011414  
Status : Answered  
Chosen Option : 3

Comprehension:

In the following passage some words have been deleted. Fill in the blanks with the help of the alternatives given. Select the most appropriate option for each number.

The last mammoths, who were very large elephant-like animals, lived as recently as 4,000 years ago. \_\_\_\_\_ (1) their well-preserved bodies can be \_\_\_\_\_ (2) frozen in the tundra of Siberia. Because \_\_\_\_\_ (3) bodies were so well protected from decay \_\_\_\_\_ (4) the permafrost, their genetic material remained intact. \_\_\_\_\_ (5) at Harvard University are researching ways to bring the mammoth back to life.

SubQuestion No : 196

Q.1  
96 Select the most appropriate option to fill in blank No.4.

- Ans
- 1. from
  - 2. at
  - 3. in
  - 4. on

Question ID : 98958011415  
Status : Answered  
Chosen Option : 2

Comprehension:



In the following passage some words have been deleted. Fill in the blanks with the help of the alternatives given. Select the most appropriate option for each number.

The last mammoths, who were very large elephant-like animals, lived as recently as 4,000 years ago. \_\_\_\_\_ (1) their well-preserved bodies can be \_\_\_\_\_ (2) frozen in the tundra of Siberia. Because \_\_\_\_\_ (3) bodies were so well protected from decay \_\_\_\_\_ (4) the permafrost, their genetic material remained intact. \_\_\_\_\_ (5) at Harvard University are researching ways to bring the mammoth back to life.

SubQuestion No : 197

Q.1  
97 Select the most appropriate option to fill in blank No.5.

- Ans
- 1. Investigators
  - 2. Scientists
  - 3. Doctors
  - 4. Engineers

Question ID : 98958011416  
Status : Answered  
Chosen Option : 2

Q.1  
98 Select the most appropriate word to fill in the blank.

The Max Hospital is within easy reach \_\_\_\_\_ the people living in Saket.

- Ans
- 1. at
  - 2. to
  - 3. of
  - 4. from

Question ID : 98958011407  
Status : Answered  
Chosen Option : 2

Q.1  
99 Select the most appropriate option to substitute the underlined segment in the given sentence. If there is no need to substitute it, select No improvement.

She has been suffering from malaria from the last four days.

- Ans
- 1. from malaria since the last four days
  - 2. from malaria for the last four days
  - 3. No improvement.
  - 4. of malaria from the last four days

Question ID : 98958011405  
Status : Answered  
Chosen Option : 2

Q.2  
00 Select the wrongly spelt word.

- Ans
- 1. blessing
  - 2. blizaard
  - 3. blight
  - 4. blossom

Question ID : 98958011438  
Status : Answered  
Chosen Option : 2

KD JOB UPDATES



## Recruitment of Sub-Inspector in Delhi Police, CAPFs and Assistant Sub-Inspector in CISF Examination, 2018

Roll No. :	
Registration No.	
Name :	
Exam Venue :	
Exam Time :	10:00 AM - 12:00 PM
Exam Date :	15/03/2019

Section : SI CPO

**Q.1** Two statements are given followed by two conclusions I and II. You have to consider these statements to be true, even if they seem to be at variance with commonly known facts and choose which of the given conclusions logically follow(s) from the given statements.

**Statements:**

All Chairs are expensive.

All expensive are unique.

**Conclusions:**

I. All chairs are unique.

II. All unique are expensive.

- Ans**
1. Only conclusion II follows.
2. Both conclusions I and II follow.
3. Only conclusion I follows.
4. Neither conclusion I nor II follows.

Question ID : 98958011162

Status : Answered

Chosen Option : 3

**Q.2** Which number will come next in the following series?

5, 12, 31, 68, 129, \_\_\_\_\_

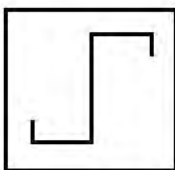
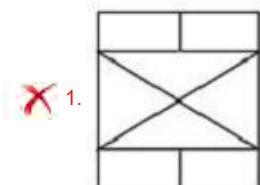
- Ans**
1. 220
2. 218
3. 131
4. 190

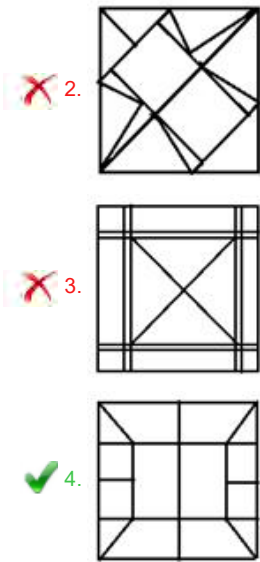
Question ID : 98958011166

Status : Answered

Chosen Option : 1

**Q.3** From the given options, select the one in which the question figure is hidden/embedded.

**Ans**

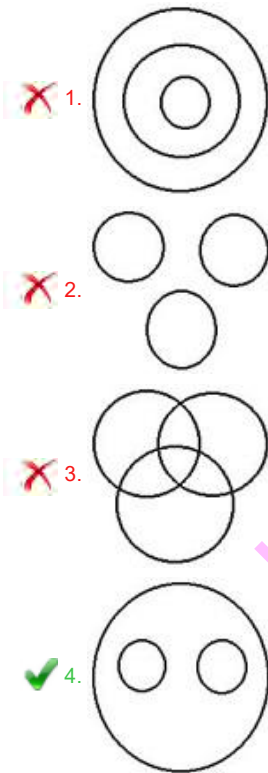


Question ID : 98958011186  
 Status : Answered  
 Chosen Option : 4

**Q.4** Choose the Venn diagram from the given options that best represents the relationship among the following classes.

Mizoram, Manipur, India

Ans

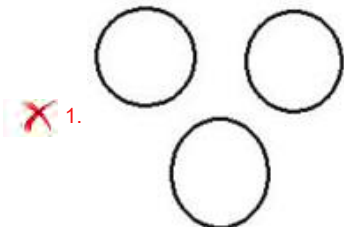


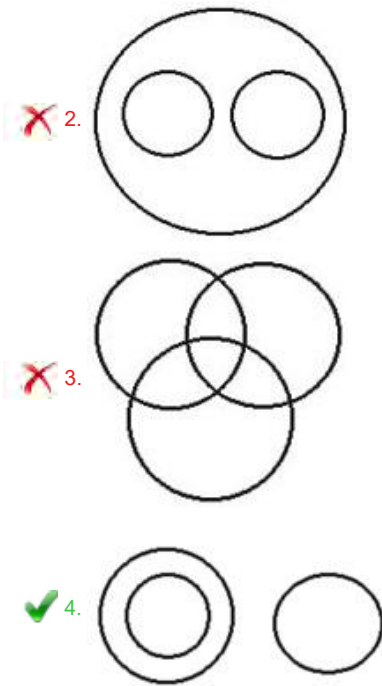
Question ID : 98958011191  
 Status : Answered  
 Chosen Option : 4

**Q.5** Choose the Venn diagram from the given options that best represents the relationship among the following classes.

Bird, Parrot, Snake

Ans





Question ID : 98958011192  
 Status : Answered  
 Chosen Option : 4

**Q.6** Select the number-pair in which the two numbers are related in the same way as are the two numbers of the given number pair.

7 : 54

- Ans
- 1. 4 : 17
  - 2. 8 : 69
  - 3. 9 : 81
  - 4. 15 : 224

Question ID : 98958011168  
 Status : Answered  
 Chosen Option : 2

**Q.7** Select the word-pair in which the two words are related in the same way as are the two words in the following word-pair. (in the same order).

Thermometer : Temperature

- Ans
- 1. Scale : Humidity
  - 2. Barometer : Depth
  - 3. Anemometer : Wind
  - 4. Odometer : Pressure

Question ID : 98958011154  
 Status : Marked For Review  
 Chosen Option : 4

**Q.8** Three of the following four letter-clusters are alike in a certain way and one is different. Find the odd one out.

- Ans
- 1. CXUF
  - 2. QJTG
  - 3. HSKP
  - 4. DWYA

Question ID : 98958011149

Status : **Answered**  
Chosen Option : **4**

**Q.9** Seema walks to her office. She is facing south when she reaches her office. After starting from home, she turned left twice and then right before reaching her office. Which direction was Seema facing when she started from her home?

- Ans  1. West  
 2. North  
 3. South  
 4. East

Question ID : **98958011179**  
Status : **Answered**  
Chosen Option : **1**

**Q.1**  
0 From the given options, select the number that is different from the other three options.

- Ans  1. 5024  
 2. 6051  
 3. 2027  
 4. 2306

Question ID : **98958011173**  
Status : **Marked For Review**  
Chosen Option : **1**

**Q.1**  
1 Select the correct alternative to indicate the arrangement of the following words in a logical and meaningful order.

1. State
2. Individual
3. Family
4. Community
5. Country

- Ans  1. 2, 3, 4, 5, 1  
 2. 2, 5, 4, 3, 1  
 3. 2, 3, 4, 1, 5  
 4. 5, 2, 4, 3, 1

Question ID : **98958011147**  
Status : **Answered**  
Chosen Option : **3**

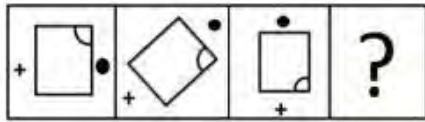
**Q.1**  
2 If AS = 19 and BAT = 40, then how will you code BREAD?

- Ans  1. 625  
 2. 720  
 3. 205  
 4. 30

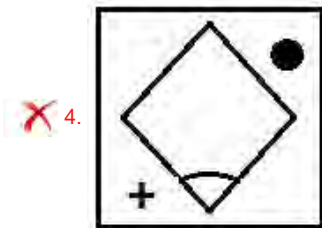
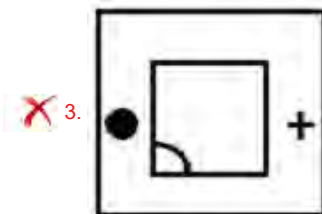
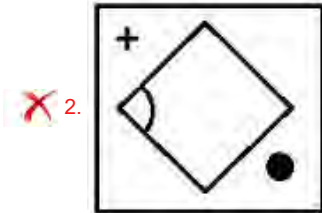
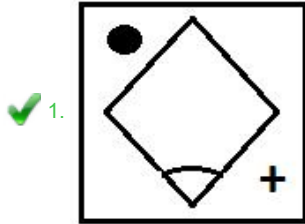
Question ID : **98958011161**  
Status : **Answered**  
Chosen Option : **2**

**Q.1**  
3

Select the figure that will come next in the following figure series.



Ans



Question ID : 98958011181

Status : Answered

Chosen Option : 1

Q.1 4 Abhishek started from a point A and walked 15 meters towards south. He turned left and walked 20 meters. He then turned left again and walked 15 meters. He again turned left and walked 35 meters and reached a point B. How far and in which direction is point B with respect to point 'A'?

Ans

✓ 1. 15 meters, West

✗ 2. 35 meters, South

✗ 3. 20 meters, North

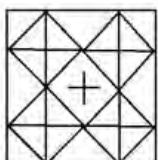
✗ 4. 15 meters, East

Question ID : 98958011180

Status : Answered

Chosen Option : 1

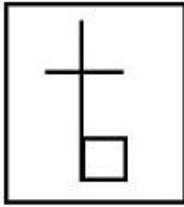
Q.1 5 From the given options, select the one that is embedded in the following figure.



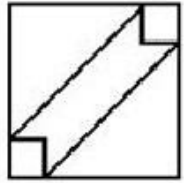
Ans



✗ 1.



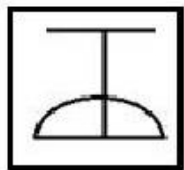
✓ 2.



✗ 3.



✗ 4.



Question ID : 98958011187

Status : Answered

Chosen Option : 1

Q.1 Which number in the given series is Incorrect?

6

3, 7, 15, 27, 53, 63

Ans

✗ 1. 7

✓ 2. 53

✗ 3. 63

✗ 4. 27

Question ID : 98958011164

Status : Answered

Chosen Option : 2

Q.1 Select the number-pair in which the two numbers are related in the same way as are the two numbers of the given number pair.

7

222 : 130

Ans

✗ 1. 350 : 49

✗ 2. 25 : 36

✓ 3. 68 : 30

✗ 4. 125 : 27

Question ID : 98958011169

Status : Not Answered

Chosen Option : --

Q.1 If 'S' stands for addition, '@' stands for subtraction, '#' stands for multiplication and '&amp;' stands for division, then what is the value of

8

12 # 8 S 36 &amp; 3 @ 6?

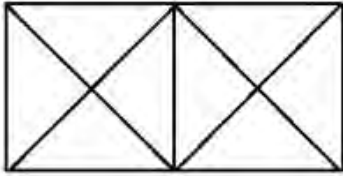
Ans

✗ 1. 46

2. 79  
 3. 102  
 4. 98

Question ID : 98958011178  
 Status : Answered  
 Chosen Option : 3

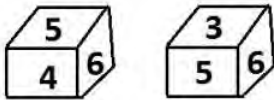
Q.1 How many triangles are there in the following figure?



- Ans  1. 22  
 2. 18  
 3. 20  
 4. 16

Question ID : 98958011184  
 Status : Marked For Review  
 Chosen Option : 2

Q.2 Two positions of a dice are shown as below. After rolling the dice, if we get the number 4 on the face at the top, which number will be on the face at the bottom?



- Ans  1. 5  
 2. 2  
 3. 1  
 4. 3

Question ID : 98958011185  
 Status : Answered  
 Chosen Option : 4

Q.2 Select the option that is related to the third term in the same way as the second term is related to the first term.

GOWE : OWOG :: MXML : \_\_\_\_\_

- Ans  1. LMLM  
 2. XLXL  
 3. MXMX  
 4. XMXM

Question ID : 98958011156  
 Status : Answered  
 Chosen Option : 4

Q.2 If, in a certain code, EDITION is written as VWRGRLM, which word would be coded as SLMVHGB ?

- Ans  1. EDITORS

2. HONESTY  
 3. AMNESTY  
 4. HAUGHTY

Question ID : 98958011159  
Status : Answered  
Chosen Option : 2

Q.2 In a certain language, JUSTICE is coded as JSUTCIE. How will JUPITER be coded in that language?

3

- Ans  1. PJUIETR  
 2. JPUEITR  
 3. JPUIERT  
 4. JPUIETR

Question ID : 98958011158  
Status : Answered  
Chosen Option : 4

Q.2 Three of the following four words are alike in a certain way and one is different. Find the odd one out.

4

- Ans  1. Mercury  
 2. Venus  
 3. Moon  
 4. Mars

Question ID : 98958011150  
Status : Answered  
Chosen Option : 3

Q.2 Which number will come next in the following series?

5

9, 196, 25, 169, 49, 144, 81, \_\_\_\_\_

- Ans  1. 36  
 2. 121  
 3. 100  
 4. 64

Question ID : 98958011165  
Status : Answered  
Chosen Option : 2

Q.2 Which letter will replace the question mark (?) in the following series?

6

A, D, G, J, M, ?

- Ans  1. Q  
 2. P  
 3. N  
 4. O

Question ID : 98958011144  
Status : Answered  
Chosen Option : 2

Q.2 Select the option that most closely resembles the mirror image of the given figure, when mirror is placed to its right side.

7

TER72HG

Ans

1. T E R 7 2 H G
2. G H S 7 R E T
3. T E R 7 2 H G
4. G H S 7 R E T

Question ID : 98958011189

Status : Answered

Chosen Option : 2

Q.2 Three of the following four number-pairs are alike in a certain way and one is different. Find the odd one out.

8

Ans

1. 21-43
2. 25-53
3. 27-55
4. 29-59

Question ID : 98958011172

Status : Answered

Chosen Option : 2

Q.2 Select the set of numbers that is similar to the following set of numbers.

9

(13, 40, 121)

Ans

1. (7, 24, 73)
2. (3, 12, 39)
3. (9, 28, 83)
4. (5, 16, 49)

Question ID : 98958011175

Status : Answered

Chosen Option : 4

Q.3 In a certain code language, 'ROCK' is written as '3587' and 'TIDE' is written as '4261'. How will 'DOCTOR' be written in the same code language?

0

Ans

1. 658435
2. 658453
3. 654853
4. 685453

Question ID : 98958011160

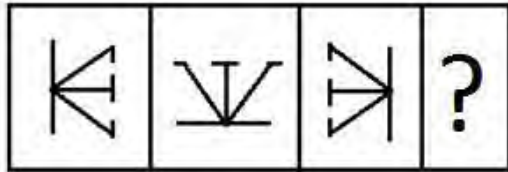
Status : Answered

Chosen Option : 2

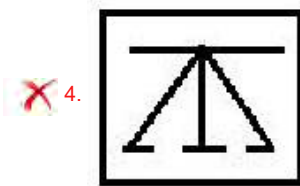
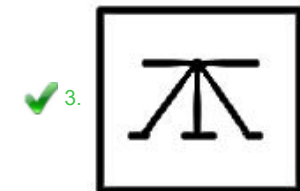
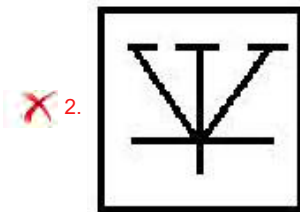
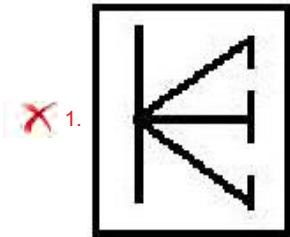
Q.3

1

Select the figure that will come next in the following figure series.



Ans



Question ID : 98958011182

Status : Answered

Chosen Option : 3

Q.3 Three of the following four letter-clusters are alike in a certain way and one is different. Find the odd one out.

2

- Ans
1. EINT
2. KOTZ
3. FHLO
4. JNSY

Question ID : 98958011148

Status : Answered

Chosen Option : 3

Q.3 Select the correct equation from the given options after interchanging operations '-' and 'x' and numbers '4' and '5'.

3

- Ans
1.  $4 - 5 \times 9 = 11$
2.  $5 \times 4 - 9 = 7$
3.  $9 - 4 \times 5 = 21$
4.  $5 \times 9 - 4 = 4$

Question ID : 98958011177

Status : Answered

Chosen Option : 1

Q.3 Select the word-pair in which the two words are related in the same way as are the two words in the following word-pair. (in the same order).

4

Council : Ministers

- Ans
- 1. Student : Teacher
  - 2. Team : Umpire
  - 3. King : Palace
  - 4. Band : Musicians

Question ID : 98958011155

Status : Answered

Chosen Option : 4

Q.3 Select the option that most closely resembles the mirror image of the given figure, when mirror is placed to its right side.

5



Ans

- 1.
- 2.
- 3.
- 4.

Question ID : 98958011188

Status : Answered

Chosen Option : 4

Q.3 Which letter-cluster will replace the question mark (?) in the following series?

6

EZI, FYJ, GXK, HWL, ?

- Ans
- 1. MVM
  - 2. IVM
  - 3. JVM
  - 4. MVN

Question ID : 98958011145

Status : Answered

Chosen Option : 2



Q.3  
7 Select the set of numbers that is similar to the following set of numbers.

(20, 42, 72)

- Ans
- 1. (16, 40, 70)
  - 2. (18, 38, 68)
  - 3. (2, 12, 20)
  - 4. (10, 22, 52)

Question ID : 98958011174

Status : Marked For Review

Chosen Option : 2

Q.3  
8 Three of the following four number-pairs are alike in a certain way and one is different. Find the odd one out.

- Ans
- 1. 17-136
  - 2. 23-185
  - 3. 13-104
  - 4. 7-56

Question ID : 98958011171

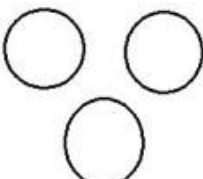
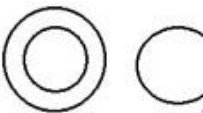
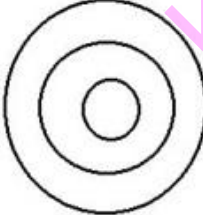
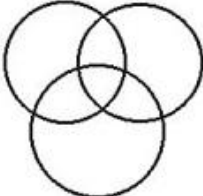
Status : Answered

Chosen Option : 2

Q.3  
9 Choose the Venn diagram from the given options that best represents the relationship among the following classes.

Year, month, day

Ans

- 1. 
- 2. 
- 3. 
- 4. 

Question ID : 98958011193

Status : Answered

Chosen Option : 3

Q.4  
0 Three of the following four number-pairs are alike in a certain way and one is different. Find the odd one out.

- Ans
- 1. 9-29

- 2. 13-40
- 3. 18-55
- 4. 17-52

Question ID : 98958011170  
 Status : Answered  
 Chosen Option : 1

Q.4 Three of the following four words are alike in a certain way and one is different. Find the odd one out.

1

- Ans
- 1. Addition
  - 2. Subtraction
  - 3. Division
  - 4. Mathematics

Question ID : 98958011151  
 Status : Answered  
 Chosen Option : 4

Q.4 Which option gives the two signs that need to be interchanged to make the given equation correct?

2

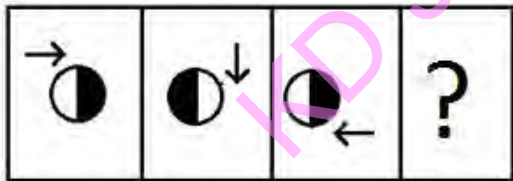
$$6 - 20 \div 12 \times 7 + 1 = 70$$

- Ans
- 1.  $\div$  and  $\times$
  - 2.  $\times$  and  $-$
  - 3.  $\times$  and  $+$
  - 4.  $\div$  and  $+$

Question ID : 98958011176  
 Status : Answered  
 Chosen Option : 4

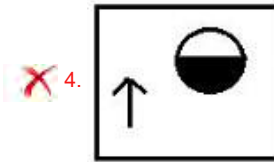
Q.4 Select the figure that will come next in the following figure series.

3



Ans

- 1.
- 2.
- 3.



Question ID : 98958011183

Status : Answered

Chosen Option : 1

**Q.4** Two statements are given followed by two conclusions I and II. You have to consider these statements to be true, even if they seem to be at variance with commonly known facts and Decide which of the given conclusions logically follow(s) from the given statements.

**Statements:**

Some mirrors are combs.

Some combs are stools.

**Conclusions:**

I. All stools are either mirrors or combs

II. Some stools are combs.

**Ans**  1. Either conclusion I or II follows.

2. Only conclusion I follows.

3. Only conclusion II follows.

4. Neither conclusion I nor II follows.

Question ID : 98958011163

Status : Answered

Chosen Option : 3

**Q.4** Select the option that is related to the third term in the same way as the second term is related to the first term.

**5** 33 : 198 :: 19 : \_\_\_\_

**Ans**  1. 49

2. 346

3. 114

4. 77

Question ID : 98958011167

Status : Answered

Chosen Option : 3

**Q.4** 'Bee' is related to 'Hive' in the same way as 'Horse' is related to:

**6** **Ans**  1. Den

2. Stable

3. Cottage

4. House

Question ID : 98958011153

Status : Answered

Chosen Option : 2

**Q.4** Select the option that is related to the third term in the same way as the second term is related to the first term.

**7** YWUS : TVXZ :: PNLJ : \_\_\_\_

**Ans**  1. MKOQ

2. KMOQ

3. KMQO

4. MKQO

Question ID : 98958011157

Status : Answered

Chosen Option : 2

**Q.4** A paper is folded and cut as shown below. How will it appear when unfolded? Select the figure that most closely resembles the formed figure after unfolding.

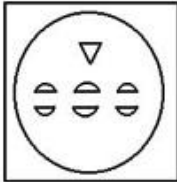
8

Question Figures

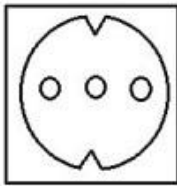


Ans

1.



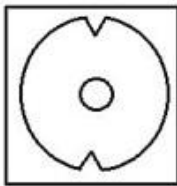
2.



3.



4.



Question ID : 98958011190

Status : Answered

Chosen Option : 2

**Q.4** Select the correct alternative to indicate the arrangement of the following words in a logical and meaningful order.

9

1. Paragraphs
2. Letters
3. Sentences
4. Words
5. Book
6. Pages

Ans

1. 2, 3, 4, 1, 6, 5

2. 2, 4, 3, 1, 5, 6

3. 2, 4, 1, 3, 6, 5

4. 2, 4, 3, 1, 6, 5

Question ID : 98958011146

Status : Answered

Chosen Option : 4

**Q.5** 'Chef' is related to 'Food' in the same way as 'Choreographer' is related to:

0

Ans  1. Stage

2. Music  
 3. Photography  
 4. Dance

Question ID : 98958011152  
Status : Answered  
Chosen Option : 4

Q.5 The firing order issued by \_\_\_\_\_ on a gathering of people on Baisakhi Day, 1931 became a turning point in India's  
1 freedom struggle.

- Ans  1. Warren Hastings  
 2. General Dyer  
 3. Lord Wellesley  
 4. Lord Cornwallis

Question ID : 98958011790  
Status : Answered  
Chosen Option : 2

Q.5 Which of the following is NOT recognised as an Intangible Cultural Heritage (ICH) by UNESCO?  
2

- Ans  1. Sitar Vadan  
 2. Yoga  
 3. Kumbh Mela  
 4. Chhau dance

Question ID : 98958011762  
Status : Answered  
Chosen Option : 4

Q.5 The Government of Odisha announced a hike of \_\_\_\_\_ in the social security pension under Madhu Babu Pension  
3 Yojana (MBPY) in January 2019.

- Ans  1. ₹ 200 per month  
 2. ₹ 500 per month  
 3. ₹ 300 per month  
 4. ₹ 400 per month

Question ID : 98958011800  
Status : Answered  
Chosen Option : 2

Q.5 Maharani Gayatri Devi was a member of the \_\_\_\_\_.  
4

- Ans  1. Swatantra Party  
 2. Bharatiya Janata Party  
 3. Indian National Congress Party  
 4. Bahujan Samaj Party

Question ID : 98958011795  
Status : Answered  
Chosen Option : 4

Q.5 \_\_\_\_\_ is an ancient Sanskrit text on medicine and surgery.

- Ans
- 1. Arthashashtra
  - 2. Raghuvamsha
  - 3. Sushruta Samhita
  - 4. Abhijnanashakuntala

Question ID : 98958011786  
Status : Answered  
Chosen Option : 4

Q.5 The Serum Institute of India launched the oral polio vaccine in \_\_\_\_\_.

- Ans
- 1. 2013
  - 2. 2014
  - 3. 2011
  - 4. 2012

Question ID : 98958011775  
Status : Answered  
Chosen Option : 2

Q.5 Dr. Zakir Husain, the 3<sup>rd</sup> President of India, was awarded the \_\_\_\_\_ in 1963.

- Ans
- 1. Padma Bhushan
  - 2. Bharat Ratna
  - 3. Padma Shree
  - 4. Padma Vibhushan

Question ID : 98958011803  
Status : Answered  
Chosen Option : 1

Q.5 \_\_\_\_\_ was the first Indian board member of the World Editors Forum.

- Ans
- 1. Bachi Karkaria
  - 2. Behram Contractor
  - 3. Shobhaa De
  - 4. Khushwant Singh

Question ID : 98958011796  
Status : Answered  
Chosen Option : 4

Q.5 Human body creates Vitamin \_\_\_\_\_ from sunlight.

- Ans
- 1. D
  - 2. B
  - 3. A
  - 4. C

Question ID : 98958011776  
Status : Answered  
Chosen Option : 1



Q.6  
0 The state of Jharkhand was formed by division of Bihar in the year \_\_\_\_\_.

- Ans
- 1. 2003
  - 2. 2000
  - 3. 2002
  - 4. 2001

Question ID : 98958011783  
Status : Answered  
Chosen Option : 1

Q.6  
1 Diabetes is a condition in which the level of \_\_\_\_\_ in an individual's blood becomes too high.

- Ans
- 1. sucrose
  - 2. glucose
  - 3. maltose
  - 4. galactose

Question ID : 98958011777  
Status : Answered  
Chosen Option : 2

Q.6  
2 Bhagat Singh, Rajguru and Sukhdev were hanged in the year \_\_\_\_\_.

- Ans
- 1. 1930
  - 2. 1933
  - 3. 1931
  - 4. 1935

Question ID : 98958011788  
Status : Answered  
Chosen Option : 4

Q.6  
3 The \_\_\_\_\_ Commission was set up to investigate the Jallianwala Bagh massacre.

- Ans
- 1. Hunter
  - 2. Sadler
  - 3. Campbell
  - 4. Butler

Question ID : 98958011789  
Status : Answered  
Chosen Option : 1

Q.6  
4 Paryushan is an important festival for the \_\_\_\_\_ community.

- Ans
- 1. Jain
  - 2. Zoroastrian
  - 3. Buddhist
  - 4. Jew

Question ID : 98958011760  
Status : Answered  
Chosen Option : 1

Q.6  
5 The \_\_\_\_\_ Channel separates the Andaman and Nicobar groups of Islands.

- Ans
- 1. Eight Degree
  - 2. Ten Degree
  - 3. Six Degree
  - 4. Twelve Degree

Question ID : 98958011781  
Status : Answered  
Chosen Option : 2

Q.6  
6 The Khelo India Youth Games was previously called \_\_\_\_\_.

- Ans
- 1. Khelo Bharat School Games
  - 2. Chalo India School Games
  - 3. Khel Khelo India
  - 4. Khelo India School Games

Question ID : 98958011804  
Status : Answered  
Chosen Option : 1

Q.6  
7 \_\_\_\_\_ was the coach of the World Cup winning Indian Cricket team in 2011.

- Ans
- 1. John Wright
  - 2. Gary Kirsten
  - 3. Duncan Fletcher
  - 4. Greg Chappell

Question ID : 98958011806  
Status : Answered  
Chosen Option : 2

Q.6  
8 India's first 3D planetarium is located in \_\_\_\_\_.

- Ans
- 1. Kochi
  - 2. Mangalore
  - 3. Bengaluru
  - 4. Hyderabad

Question ID : 98958011772  
Status : Answered  
Chosen Option : 3

Q.6  
9 Which of the following is NOT another name for Ram Setu?

- Ans
- 1. Setu Banda
  - 2. Nala Banda
  - 3. Adam's Bridge
  - 4. Nala Setu

Question ID : 98958011784  
Status : Answered  
Chosen Option : 2

Q.7  
0 \_\_\_\_\_ is India's oldest research reactor.

- Ans
- 1. Circus
  - 2. Dhruva
  - 3. Kamini
  - 4. Apsara

Question ID : 98958011770  
Status : Answered  
Chosen Option : 2

Q.7  
1 The \_\_\_\_\_ in Kerala has its own elephant sanctuary.

- Ans
- 1. Sri Padmanabhaswamy Temple
  - 2. Sabarimala Sree Ayyappa Temple
  - 3. Chottanikkara Devi Temple
  - 4. Guruvayoor Temple

Question ID : 98958011758  
Status : Answered  
Chosen Option : 2

Q.7  
2 Neelam Sanjeeva Reddy served as \_\_\_\_\_ from 1956 to 1959.

- Ans
- 1. Member of Rajya Sabha
  - 2. Deputy Chief Minister
  - 3. Chief Minister
  - 4. President

Question ID : 98958011801  
Status : Answered  
Chosen Option : 3

Q.7  
3 Smiling Buddha is a code name for \_\_\_\_\_.

- Ans
- 1. India's first unmanned tank
  - 2. The Father of the Indian Nuclear Program
  - 3. India's largest power plant
  - 4. India's first nuclear bomb test

Question ID : 98958011773  
Status : Answered  
Chosen Option : 4

Q.7  
4 Which ad filmmaker also played a role in the historical film 'Gandhi'?

- Ans
- 1. Gerson da Cunha
  - 2. Saeed Jaffrey
  - 3. Alyque Padamsee

4. Roshan Seth

Question ID : 98958011797  
Status : Answered  
Chosen Option : 2

Q.7  
5 Name the Nobel Laureate who helped crack the genetic code.

- Ans  1. Har Gobind Khorana  
 2. Subramaniam Chandrasekar  
 3. Venkatraman Ramakrishnan  
 4. Abdus Salam

Question ID : 98958011774  
Status : Answered  
Chosen Option : 3

Q.7  
6 In January 2019, the Government of \_\_\_\_\_ released 'Startup and Innovation policy 2018-2023' to make the state a "Global Innovation hub for startups" by 2023.

- Ans  1. Tamil Nadu  
 2. Kerala  
 3. Uttarakhand  
 4. Telangana

Question ID : 98958011799  
Status : Answered  
Chosen Option : 4

Q.7  
7 Shooter \_\_\_\_\_ won a gold medal in the Men's 10 m Air Pistol event at the 2018 Jakarta Palembang Asian Games held in Indonesia.

- Ans  1. Saurabh Chaudhary  
 2. Jitu Rai  
 3. Om Prakash Mitharwal  
 4. Abhishek Verma

Question ID : 98958011807  
Status : Answered  
Chosen Option : 1

Q.7  
8 Kailasa temple in the \_\_\_\_\_ Caves is the largest rock-cut monument in the world.

- Ans  1. Elephanta  
 2. Ajanta  
 3. Karla  
 4. Ellora

Question ID : 98958011759  
Status : Answered  
Chosen Option : 2

Q.7  
9 The 2<sup>nd</sup> National Conference on Self Reliance in Defense Manufacturing was organized at \_\_\_\_\_ in 2019.

- Ans  1. Pune

2. Delhi
3. Chennai
4. Hyderabad

Question ID : 98958011766  
Status : Answered  
Chosen Option : 4

Q.8 Name the theatre and film actor who apart from training contestants for the Miss India pageant has also hosted a popular quiz show in the 1970s.

- Ans  1. Padma Laxmi
2. Tabassum
3. Sabira Merchant
4. Simi Garewal

Question ID : 98958011794  
Status : Answered  
Chosen Option : 4

Q.8 \_\_\_\_\_ is India's largest research reactor.

- Ans  1. Kamini
2. Apsara
3. Dhruva
4. Circus

Question ID : 98958011771  
Status : Answered  
Chosen Option : 2

Q.8 A high tensile alloy steel called \_\_\_\_\_ was used to construct Howrah Bridge.

- Ans  1. TISCOP
2. TISCBROM
3. TISCAL
4. TISCROM

Question ID : 98958011785  
Status : Answered  
Chosen Option : 4

Q.8 \_\_\_\_\_ was constructed in 1994 for the National Games, 1994.

- Ans  1. Jawaharlal Nehru Stadium, Kochi
2. DY Patil Stadium, Navi Mumbai
3. Shree Shiv Chhatrapati Sports Complex, Pune
4. Kalinga Stadium, Bhubaneswar

Question ID : 98958011805  
Status : Answered  
Chosen Option : 3

Q.8 Right \_\_\_\_\_ ceased to be a fundamental right after the 45th Amendment bill, 1978 to the Indian Constitution.

4



- Ans  1. To Property  
 2. Against Exploitation  
 3. To Education  
 4. To Equality

Question ID : 98958011802  
Status : Answered  
Chosen Option : 1

Q.8  
5 A character in the Hindi feature film '3 idiots' was inspired by \_\_\_\_\_, an engineer based in Ladakh.

- Ans  1. Sonam Wangdu  
 2. Sonam Wangchuk  
 3. Phunsukh Wangchuk  
 4. Phunsuk Wangdu

Question ID : 98958011793  
Status : Answered  
Chosen Option : 3

Q.8  
6 The last Maha Kumbh was held in Prayag in \_\_\_\_\_.

- Ans  1. 2013  
 2. 2011  
 3. 2015  
 4. 2014

Question ID : 98958011761  
Status : Answered  
Chosen Option : 3

Q.8  
7 Which of the following CANNOT be attributed to Aryabhata?

- Ans  1. Theory of eclipses  
 2. Zero  
 3. Theory of Atom  
 4. Value of pi

Question ID : 98958011787  
Status : Answered  
Chosen Option : 3

Q.8  
8 The world's largest mobile phone factory was set up in \_\_\_\_\_ under the Indian Government's 'Make in India' initiative.

- Ans  1. Hyderabad  
 2. Amravati  
 3. Sanand  
 4. Noida

Question ID : 98958011764  
Status : Answered  
Chosen Option : 4



Q.8  
9 \_\_\_\_\_ from Bihar is a GI tagged food item.

- Ans  1. Silao Khaja  
 2. Sita Bhog  
 3. Petha  
 4. Moa

Question ID : 98958011782  
Status : Answered  
Chosen Option : 1

Q.9  
0 The Election Commission celebrated its golden jubilee in the year \_\_\_\_\_.

- Ans  1. 2001  
 2. 2011  
 3. 1998  
 4. 1997

Question ID : 98958011798  
Status : Answered  
Chosen Option : 2

Q.9  
1 The \_\_\_\_\_ Stock Exchange was the first to be recognized by the Government of India under the Securities Contracts Regulation Act.

- Ans  1. Ahmedabad  
 2. Calcutta  
 3. Bombay  
 4. Madras

Question ID : 98958011767  
Status : Answered  
Chosen Option : 3

Q.9  
2 \_\_\_\_\_ is a commonly used medicine that can help treat pain and reduce a high body temperature.

- Ans  1. Bismuth  
 2. Dextromethorphan  
 3. Paracetamol  
 4. Guaifenesin

Question ID : 98958011779  
Status : Answered  
Chosen Option : 3

Q.9  
3 The process of blood clotting is called \_\_\_\_\_.

- Ans  1. haemophilia  
 2. homophobia  
 3. coagulation  
 4. thrombocytopenia

Question ID : 98958011778  
Status : Marked For Review

Chosen Option : 4

Q.9  
4 The innovative concept of using sunshine to keep houses warm in freezing winters is called \_\_\_\_\_.

- Ans
- 1. latent solar heating
  - 2. passive solar heating
  - 3. conductive solar heating
  - 4. radiation heating

Question ID : 98958011780  
Status : Answered  
Chosen Option : 1

Q.9  
5 Raghuram Rajan succeeded \_\_\_\_\_ as the Governor of the Reserve Bank of India in 2013.

- Ans
- 1. D. Subbarao
  - 2. Bimal Jalan
  - 3. Manmohan Singh
  - 4. Urjit Patel

Question ID : 98958011763  
Status : Answered  
Chosen Option : 1

Q.9  
6 Asian Premium is the high price that Asian countries pay to import \_\_\_\_\_.

- Ans
- 1. machinery
  - 2. precious metals
  - 3. mobile phones
  - 4. crude oil

Question ID : 98958011765  
Status : Answered  
Chosen Option : 4

Q.9  
7 Brass is an alloy of:

- Ans
- 1. copper and zinc
  - 2. lead and copper
  - 3. zinc and iron
  - 4. iron and lead

Question ID : 98958011768  
Status : Answered  
Chosen Option : 1

Q.9  
8 The daughter of Moropant Tambe and Bhagirathi Sapre became famous as \_\_\_\_\_.

- Ans
- 1. Jijabai
  - 2. Ahilyabai Holkar
  - 3. Rajmata Gayatri Devi

✓ 4. Rani Laxmibai

Question ID : 98958011791

Status : Answered

Chosen Option : 3

Q.9 Which of the following Indian psychiatrists was awarded the Ramon Magsaysay Award in 2018 for leading the rescue of thousands of mentally ill street paupers and reuniting them with their families?

Ans ✓ 1. Bharat Vatwani

✗ 2. Subin Vazhayil

✗ 3. N Rangarajan

✗ 4. Vipul Rastogi

Question ID : 98958011792

Status : Answered

Chosen Option : 3

Q.1 \_\_\_\_\_ is known as Universal Solvent.

Ans ✗ 1. Alcohol

✗ 2. Kerosene

✗ 3. Acetone

✓ 4. Water

Question ID : 98958011769

Status : Answered

Chosen Option : 4

Q.1 A marketing agent earns a commission of 2% on first ₹ 2,00,000, 1.5% on next ₹ 2,00,000 and 1% on the remaining amount of sales made in a month. If the sales achieved by the agent for the month of April 2018 are ₹ 5,68,000, the commission earned is:

Ans ✗ 1. ₹ 7,105

✗ 2. ₹ 7,730

✗ 3. ₹ 8,240

✓ 4. ₹ 8,680

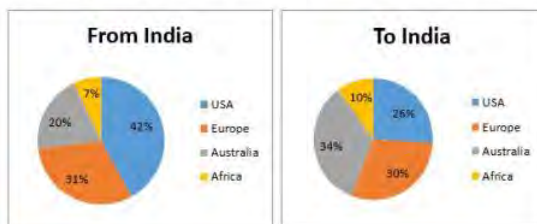
Question ID : 98958011307

Status : Answered

Chosen Option : 4

Q.1 The given pie-chart shows the numbers of tourists for the year 2015, traveling from India and to India.

02



In the given pie-chart, if the number of tourists visiting India is 21,35,600 and the number from India to other countries is 20,45,450, how many more people visited USA from India than from USA to India?

Ans ✓ 1. 303833

✗ 2. 358097

✗ 3. 342675

✗ 4. 287698

Question ID : 98958011340  
Status : Not Answered  
Chosen Option : --

Q.1  
03 The value of  $4\sin^2 30^\circ + 3\cot^2 60^\circ$  is:

- Ans
- 1.  $\frac{1}{\sqrt{3}}$
  - 2. 0
  - 3. 1
  - 4. 2

Question ID : 98958011332  
Status : Answered  
Chosen Option : 4

Q.1  
04 The least number that should be added to 10000 so that it is exactly divisible by 327 is:

- Ans
- 1. 237
  - 2. 137
  - 3. 190
  - 4. 327

Question ID : 98958011300  
Status : Answered  
Chosen Option : 2

Q.1  
05 ₹ 2,40,000 is taken as loan for three years compounded annually at 12.5% p.a. At the end of first year, the interest is revised to 12% p.a. The total amount to be repaid at the end of third year is:

- Ans
- 1. ₹ 3,26,400
  - 2. ₹ 3,38,688
  - 3. ₹ 3,34,800
  - 4. ₹ 3,42,648

Question ID : 98958011312  
Status : Marked For Review  
Chosen Option : 3

Q.1  
06 A tall rectangular vessel is half filled with water. The base dimension of the vessel is 62 cm × 45 cm. A heavy metal cube of edge 15 cm is dropped into the vessel. The rise in level of the vessel is:

- Ans
- 1. 1.21 cm
  - 2. 1.07 cm
  - 3. 1.15 cm
  - 4. 1 cm

Question ID : 98958011322  
Status : Answered  
Chosen Option : 2

Q.1  
07 The cube root of 3375 is equal to:

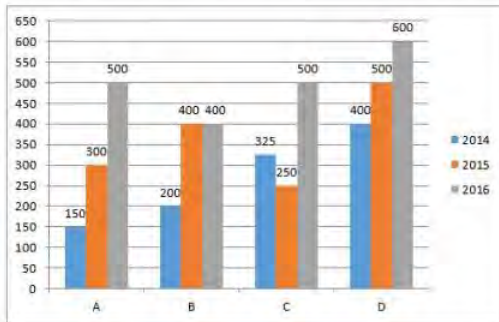
- Ans
- 1. 35
  - 2. 55
  - 3. 15

4. 25

Question ID : 98958011294  
Status : Answered  
Chosen Option : 3

Q.1 The given bar chart shows production of steel by companies A, B, C and D for years 2014, 2015, 2016 (in tonnes).

08



In the given bar-chart, what is the percentage production of 'B' in 2014 to the total production of 2014?

- Ans  1. 20%  
 2. 27.6%  
 3. 18.6%  
 4. 19.4%

Question ID : 98958011337  
Status : Answered  
Chosen Option : 1

Q.1 A car consumes 5.4 litres of petrol to cover 60.48 km, how many kilometers be covered with 22 litres of petrol?

09

- Ans  1. 246.4  
 2. 243.5  
 3. 240.24  
 4. 238.62

Question ID : 98958011313  
Status : Answered  
Chosen Option : 1

Q.1 If the height of a pole and the distance between the pole and a man standing nearby are equal, what would be the angle of elevation to the top of the pole?

10

- Ans  1. 90°  
 2. 30°  
 3. 60°  
 4. 45°

Question ID : 98958011334  
Status : Answered  
Chosen Option : 4

Q.1 If the height of an equilateral triangle is  $10\sqrt{3}$  cm, the area is:

11

- Ans  1.  $100\sqrt{3}$  cm<sup>2</sup>  
 2.  $80\sqrt{3}$  cm<sup>2</sup>  
 3.  $124\sqrt{3}$  cm<sup>2</sup>



4.  $75\sqrt{3} \text{ cm}^2$

Question ID : 98958011330  
 Status : Answered  
 Chosen Option : 1

Q.1  
 12 Which of the following solids has least number of faces?

- Ans  1. Cube  
 2. Square pyramid  
 3. Cone  
 4. Triangular prism

Question ID : 98958011319  
 Status : Answered  
 Chosen Option : 3

Q.1  
 13 A scored 73, 76, 20, and 7 runs in four out of five innings. What should be his score in the fifth innings, if he has to make an average of 55 runs in five innings?

- Ans  1. 55  
 2. 42  
 3. 99  
 4. 11

Question ID : 98958011301  
 Status : Answered  
 Chosen Option : 3

Q.1  
 14 The table shows Income and expenditure of a person for 3 years (in thousands):

Statement of Income and expenditure

Year	Income	Expense	Savings
2000	110	103	+7
2001	223	214	+9
2002	243	197	+46
2003	189	232	-43

In the given table, what is the percentage of expenditure on income in the year 2002?(round off)

- Ans  1. 78%  
 2. 81%  
 3. 85%  
 4. 82%

Question ID : 98958011341  
 Status : Answered  
 Chosen Option : 2

Q.1  
 15 A bought 600 gm, 750 gm, 1.1 kg, 2.3 kg and 800 gm packs of dal from a shop. What is the average weight of the packs?

- Ans  1. 1.11 gm  
 2. 1.11 kg



3. 11.1 kg

4. 111 gm

Question ID : 98958011302  
Status : Answered  
Chosen Option : 2

**Q.1** In an office of 1200 employees, the ratio of urban to rural members of staff is 8 : 7. After joining of some new employees, out of which 20 are rural, the ratio becomes 5 : 4. The number of new urban employees is:

**Ans**  1. 108

2. 76

3. 85

4. 100

Question ID : 98958011309  
Status : Answered  
Chosen Option : 3

**Q.1** A drives at the rate of 45 km/h and reaches its destination 4 minutes late. If speed is 60 km/h, A reaches 5 minutes early. The distance traveled by A is:

**Ans**  1. 24 km

2. 30 km

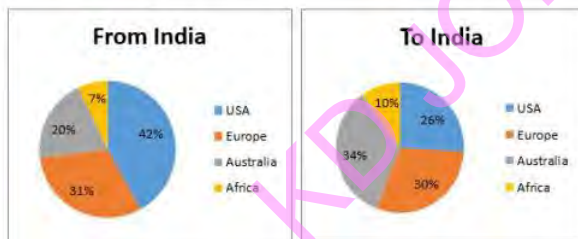
3. 27 km

4. 21 km

Question ID : 98958011317  
Status : Answered  
Chosen Option : 3

**Q.1** The given pie-chart shows the numbers of tourists for the year 2015, traveling from India and to India.

18



In the given pie-chart, from which country tourists have come to India more than Indians going to that country:

**Ans**  1. USA

2. Australia only

3. Australia and Africa

4. Europe

Question ID : 98958011338  
Status : Answered  
Chosen Option : 3

**Q.1** ABCD is a cyclic quadrilateral such that AB is a diameter of the circle circumscribing it and angle ADC = 125°. Then angle BAC is equal to:

**Ans**  1. 35°

2. 20°

3. 30°

4. 60°

Question ID : 98958011327

Status : Answered

Chosen Option : 1

Q.1 20 If a cuboid has  $l = 24$  cm,  $b = 16$  cm,  $h = 7.5$  cm, its lateral surface area is:

- Ans
- 1.  $1440 \text{ cm}^2$
  - 2.  $600 \text{ cm}^2$
  - 3.  $720 \text{ cm}^2$
  - 4.  $2880 \text{ cm}^2$

Question ID : 98958011320

Status : Answered

Chosen Option : 2

Q.1 21 The simple interest on a certain sum at 15% p.a. for three years is ₹ 7,200. The sum is:

- Ans
- 1. ₹ 32,000
  - 2. ₹ 24,000
  - 3. ₹ 48,000
  - 4. ₹ 16,000

Question ID : 98958011311

Status : Answered

Chosen Option : 4

Q.1 22 The price of petrol was raised by 15%. By how much percentage should a motorist reduce the consumption of petrol so that the expenditure on it does not increase?

- Ans
- 1.  $6\frac{7}{8}\%$
  - 2.  $13\frac{1}{23}\%$
  - 3.  $15\frac{3}{13}\%$
  - 4.  $9\frac{2}{11}\%$

Question ID : 98958011306

Status : Answered

Chosen Option : 2

Q.1 23 If  $x = a \cos\theta + b \sin\theta$  and  $y = a \sin\theta - b \cos\theta$ , the value of  $x^2 + y^2$  is:

- Ans
- 1.  $a + b$
  - 2.  $a - b$
  - 3.  $a^2 - b^2$
  - 4.  $a^2 + b^2$

Question ID : 98958011331

Status : Answered

Chosen Option : 4

Q.1  
24

If  $x + \frac{1}{x} = 2\sqrt{3}$ , then  $x^2 + \frac{1}{x^2}$  is equal to:

- Ans
- 1. 8
  - 2. 12
  - 3. 16
  - 4. 10

Question ID : 98958011325  
Status : Answered  
Chosen Option : 2

Q.1 8% of 5 litres is:

25

- Ans
- 1. 40 ml
  - 2. 400 ml
  - 3. 4 ml
  - 4. 0.4 ml

Question ID : 98958011305  
Status : Answered  
Chosen Option : 2

Q.1 PA and PB are two tangents to a circle with centre O, from a point P outside the circle. A and B are points on the circle.  
26 If  $\angle APB = 86^\circ$ , then  $\angle OAB$  is equal to:

- Ans
- 1.  $20^\circ$
  - 2.  $43^\circ$
  - 3.  $50^\circ$
  - 4.  $45^\circ$

Question ID : 98958011328  
Status : Answered  
Chosen Option : 2

Q.1 The number 66249 is divisible by which of the single digit numbers:

27

- Ans
- 1. Only by 3
  - 2. Only by 9
  - 3. Only by 3 and 7
  - 4. Only by 3 and 9

Question ID : 98958011295  
Status : Answered  
Chosen Option : 4

Q.1 Three painters have to spend 6 hours a day for 12 days to finish a work. If after 3 days one painter leaves, in how many  
28 days the remaining work will be completed?

- Ans
- 1.  $13\frac{1}{2}$
  - 2.  $15\frac{2}{3}$
  - 3. 8
  - 4. 11

Question ID : 98958011314

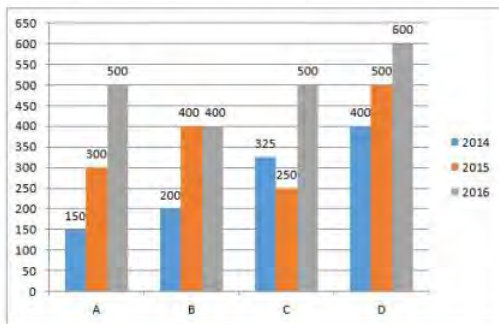
Status : **Marked For Review**  
Chosen Option : 1

Q.1  $\frac{3}{4} + \frac{5}{2} \left[ \frac{1}{4} \times \left( \frac{8}{5} - \frac{4}{3} \right) \right]$  is equal to:

- Ans
- 1.  $\frac{1}{4}$
  - 2.  $\frac{11}{12}$
  - 3.  $\frac{13}{24}$
  - 4.  $\frac{3}{4}$

Question ID : **98958011299**  
Status : **Answered**  
Chosen Option : 2

Q.1 The given bar chart shows production of steel by companies A, B, C and D for years 2014, 2015, 2016 (in tonnes).  
30



In the given bar-chart, which company has the maximum total production of steel?

- Ans
- 1. D
  - 2. A
  - 3. C
  - 4. B

Question ID : **98958011336**  
Status : **Answered**  
Chosen Option : 1

Q.1 If  $(2x - 1)^2 + (3x - 4)^2 + (x - 7)^2 = (6x - 3)(3x - 4)(x - 7)$ , then what is the value of  $x$ ?  
31

- Ans
- 1. 5
  - 2. 2
  - 3. 8
  - 4. 3

Question ID : **98958011324**  
Status : **Answered**  
Chosen Option : 2

Q.1 Two pipes A and B can fill a tank in 45 minutes. If pipe A can fill an empty tank in 1 hour, how long will it take pipe B to fill the empty tank?  
32

- Ans
- 1. 1 hour
  - 2. 3 hours
  - 3. 4 hours

4. 2 hours

Question ID : 98958011316

Status : Answered

Chosen Option : 2

Q.1 33 A and B are standing on the same side of a wall and observe that the angles of elevation to the top of the wall are  $45^\circ$  and  $60^\circ$  respectively. If the height of the wall is 50 m, the distance between A and B is: (Use  $\sqrt{3}=1.73$  and  $\sqrt{2}=1.41$ )

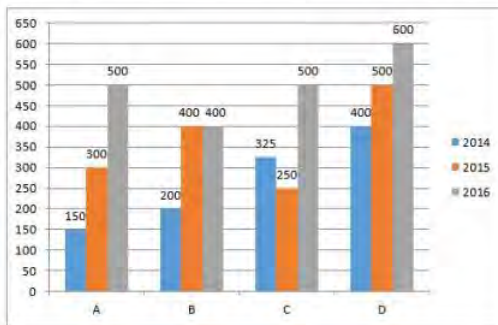
- Ans
1. 17.38 m
2. 21.10 m
3. 25.07 m
4. 14.65 m

Question ID : 98958011333

Status : Not Attempted and Marked For Review

Chosen Option : --

Q.1 34 The given bar chart shows production of steel by companies A, B, C and D for years 2014, 2015, 2016 (in tonnes).



In the given bar-chart, the average production of steel at 'C' for the year 2014-2016 is:

- Ans
1. 358.33
2. 400
3. 423.58
4. 333.33

Question ID : 98958011335

Status : Answered

Chosen Option : 1

Q.1 35 The marked price of a dress is ₹ 2,340 which is 25% above the cost price. If the dress is sold at a profit of 10%, the profit earned on the dress is:

- Ans
1. ₹ 197
2. ₹ 175.50
3. ₹ 187.20
4. ₹ 234

Question ID : 98958011308

Status : Answered

Chosen Option : 3

Q.1 36 The greatest number of four digits which is exactly divisible by 24, 36 and 54 is:

- Ans
1. 9924
2. 9990
3. 9960
4. 9936

Question ID : **98958011297**  
 Status : **Answered**  
 Chosen Option : **4**

Q.1 37 ₹ 4,06,736 is divided among A, B and C such that the ratio between A and B is 2 : 3 and B and C is 1 : 2. The share of C is:

- Ans
- 1. ₹ 2,64,796
  - 2. ₹ 1,10,928
  - 3. ₹ 2,21,856
  - 4. ₹ 73,952

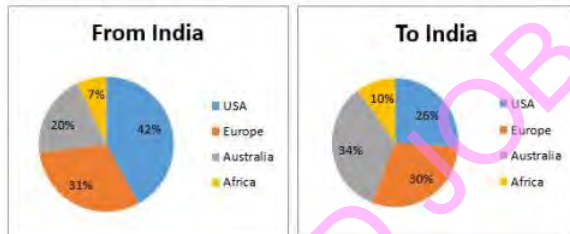
Question ID : **98958011310**  
 Status : **Answered**  
 Chosen Option : **3**

Q.1 38 If  $a^3 + b^3 = 416$  and  $a + b = 16$ , then  $(a - b)^2 + ab$  is equal to:

- Ans
- 1. 24
  - 2. 32
  - 3. 22
  - 4. 26

Question ID : **98958011326**  
 Status : **Answered**  
 Chosen Option : **4**

Q.1 39 The given pie-chart shows the numbers of tourists for the year 2015, traveling from India and to India.



In the given pie-chart, if 1657850 is the total number of tourists visiting India, how many visited from Australia:

- Ans
- 1. 457602
  - 2. 589320
  - 3. 331570
  - 4. 563669

Question ID : **98958011339**  
 Status : **Answered**  
 Chosen Option : **4**

Q.1 40  $(-4) \times (-8) \div (-2) + 3 \times 5$  is equal to:

- Ans
- 1. 31
  - 2. -31
  - 3. -1
  - 4. 1

Question ID : **98958011298**  
 Status : **Answered**  
 Chosen Option : **3**



Q.1 41 A pipe can fill a tank in 30 minutes. Due to two leakages A and B, the filled tank would be drained off in  $1\frac{1}{2}$  hour and  $1\frac{1}{4}$  hour respectively. How long will it take to fill the tank if the pipe, A and B are left open?

- Ans
- 1.  $1\frac{1}{3}$  hour
  - 2.  $1\frac{4}{5}$  hour
  - 3.  $1\frac{5}{6}$  hour
  - 4.  $1\frac{7}{8}$  hour

Question ID : 98958011315  
 Status : Answered  
 Chosen Option : 4

Q.1 42 The distance between two cities is covered in  $3\frac{1}{4}$  hours at a speed of 52 km/h. If the speed is increased to 65 km/h, how much time would be saved?

- Ans
- 1. 42 minutes
  - 2. 45 minutes
  - 3. 39 minutes
  - 4. 40 minutes

Question ID : 98958011318  
 Status : Answered  
 Chosen Option : 3

Q.1 43 The product of two numbers is 45360; if the HCF of the numbers is 36, then their LCM is:

- Ans
- 1. 1260
  - 2. 252
  - 3. 630
  - 4. 126

Question ID : 98958011296  
 Status : Answered  
 Chosen Option : 1

Q.1 44 The sides of a triangle are in the ratio 3 : 4 : 5. If the perimeter of the triangle is 24 cm, its area is:

- Ans
- 1.  $24\text{ cm}^2$
  - 2.  $22.89\text{ cm}^2$
  - 3.  $20\text{ cm}^2$
  - 4.  $18\text{ cm}^2$

Question ID : 98958011329  
 Status : Answered  
 Chosen Option : 1

Q.1 45 The dimensions of a swimming pool are  $66\text{ m} \times 35\text{ m} \times 3\text{ m}$ . How many hours will it take to fill the pool by a pipe of diameter 35 cm with water flowing at speed 8 m/s?

- Ans
- 1. 2.75
  - 2. 3.2
  - 3. 2.5

4. 3.5

Question ID : 98958011321  
Status : Answered  
Chosen Option : 3

Q.1 The table shows Income and expenditure of a person for 3 years (in thousands);  
46

Statement of Income and expenditure			
Year	Income	Expense	Savings
2000	110	103	+7
2001	223	214	+9
2002	243	197	+46
2003	189	232	-43

In the given table, if a person reduced his expenditure by 10%, by how much would his total savings increased?

- Ans
1. 78.2
2. 83
3. 74.6
4. 69.8

Question ID : 98958011343  
Status : Not Answered  
Chosen Option : --

Q.1 A trader gives a discount of 4% for purchases above ₹ 25,000, 6% for purchases above ₹ 35,000 and 8% for purchases above ₹ 50,000. If an item is purchased for ₹ 38,500, what would be the amount of discount?  
47

- Ans
1. ₹ 3,740
2. ₹ 1,810
3. ₹ 3,080
4. ₹ 2,310

Question ID : 98958011304  
Status : Answered  
Chosen Option : 4

Q.1 The price of a refrigerator is ₹ 22,000. A shopkeeper marks its price 15% above its cost price and gives a discount of 8%. The discount is:  
48

- Ans
1. ₹ 2,024
2. ₹ 1,824
3. ₹ 1,672
4. ₹ 1,960

Question ID : 98958011303  
Status : Marked For Review  
Chosen Option : 3

Q.1  
49

The table shows Income and expenditure of a person for 3 years (in thousands):

Statement of Income and expenditure			
Year	Income	Expense	Savings
2000	110	103	+7
2001	223	214	+9
2002	243	197	+46
2003	189	232	-43

In the given table, if a person invested his savings every year at 8% simple interest, how much interest will he earn at the end of 2003?

- Ans  1. 6.80  
 2. 5.52  
 3. 4.96  
 4. 7.46

Question ID : 98958011342  
 Status : Not Answered  
 Chosen Option : --

Q.1 How many soap cakes of size 8 cm × 4.5 cm × 2 cm can be kept in a carton of size 11 m × 0.82 m × 0.63 m?

50

- Ans  1. 81052  
 2. 78925  
 3. 75626  
 4. 73498

Question ID : 98958011323  
 Status : Marked For Review  
 Chosen Option : 2

Q.1 Select the most appropriate word to fill in the blank.

51

Similar to physical ailments, mental illness is also rooted in a \_\_\_\_\_ basis, as opposed to beliefs which attribute mental illnesses to the presence of evil spirits.

- Ans  1. physical  
 2. logical  
 3. biochemical  
 4. biological

Question ID : 98958011461  
 Status : Answered  
 Chosen Option : 1

Q.1 Identify the segment in the sentence, which contains the grammatical error.

52

The subway system has become very safe and it has come a long way since the 1980s and 1990s where violence was rampant.

- Ans  1. a long way  
 2. where violence  
 3. has become very safe  
 4. it has come

Question ID : 98958011452  
 Status : Answered  
 Chosen Option : 4

Q.1 Identify the segment in the sentence, which contains the grammatical error.

53

We are witnessing the worse level of income inequality in decades.

- Ans
- 1. income inequality
  - 2. the worse level of
  - 3. are witnessing
  - 4. in decades.

Question ID : 98958011451

Status : Answered

Chosen Option : 3

Q.1 Select the most appropriate meaning of the given idiom.

54

to leave no stone unturned

- Ans
- 1. to comprehensively arrange things
  - 2. to make all possible efforts
  - 3. to completely renovate an old building
  - 4. to fully revise something produced

Question ID : 98958011481

Status : Answered

Chosen Option : 2

Q.1 Select the synonym of the given word.

55

REPLACED

- Ans
- 1. substituted
  - 2. moved
  - 3. removed
  - 4. instituted

Question ID : 98958011470

Status : Answered

Chosen Option : 1

Q.1 Select the synonym of the given word.

56

LAUNCHING

- Ans
- 1. navigating
  - 2. introducing
  - 3. driving
  - 4. running

Question ID : 98958011473

Status : Answered

Chosen Option : 2

Q.1 Select the most appropriate meaning of the given idiom.

57

to pigeon hole

- Ans
- 1. to blindly accept someone
  - 2. to typecast someone
  - 3. to call someone names
  - 4. to hurriedly reject someone

Question ID : 98958011479  
Status : Marked For Review  
Chosen Option : 4

Q.1 Identify the segment in the sentence, which contains the grammatical error.

58

For the long-term strength of the economy the limit of corporate stock buybacks is a potential solution.

- Ans
- 1. For the long term
  - 2. limit of corporate stock buybacks
  - 3. is a potential solution
  - 4. strength of the economy

Question ID : 98958011450  
Status : Marked For Review  
Chosen Option : 2

Comprehension:

KD JOB UPDATES



Read the following passage and answer the questions that follow-

The Blue Mountains, just 90 minutes from Sydney, get their name from the natural blue haze created by vast eucalyptus forests in this World Heritage area. Tiny droplets of oil released from the trees mix with water vapour and sunlight to produce the distinctive colour.

Etched with deep fissures that have been chiselled and shaped over ages from the sandstone of an ancient sea, the Blue Mountains is ideal for the thrilling adventure sport of canyoning. A rope-assisted descent into a canyon or cave, canyoning gives access to a beautiful subterranean world. With its dramatic vistas, soaring forests, deep gorges, waterfalls and hundreds of kilometres of walking trails, the Blue Mountains saves its best for bushwalkers.

A highlight of the Greater Blue Mountains World Heritage Area, Jenolan Caves is a labyrinth of stalactite-lined limestone chasms carved by underground rivers. Set in a deep and secluded valley on the western edge of the Blue Mountains, the pure underground rivers and amazing formations inside the caves make this one of the finest cave systems in the world. With 11 spectacular show caves, underground rivers and awe-inspiring formations, you can explore the caves on a guided day tour, get goose bumps on a ghost tour or enjoy a monthly cave concert with natural acoustics and fairy tale ambience.

Another way to experience the natural splendour of the Blue Mountains is by biking or walking. Blue Mountain Bikes provide a mobile service that meets you with bikes, equipment and maps. You can also discover the Blue Mountains' rich Aboriginal heritage on a walking tour with a local guide. It's best to join a guided tour if you're unfamiliar with the region and weather conditions. A trip to the Blue Mountains wouldn't be complete without visiting Katoomba. There you can ride the Scenic Skyway gondola across Jamison Valley, taking in views of the Three Sisters, Mount Solitary and Katoomba Falls. You can also visit the Scenic Railway, the world's steepest incline railway, descending more than 400 metres (0.25 miles) down the escarpment. This thrilling ride passes through a long tunnel and gorge, ending on the valley floor, and is a huge hit with children.

With thousands of plants from the southern hemisphere and around the world, including the rare Wollemi Pine, the Blue Mountains Botanic Garden at Mount Tomah is a must-see for nature lovers. The cool climate garden is 1000 metres (0.62 miles) above sea level and has stunning views across the area. Wander around the estate and explore the many formal gardens. The region is also worth checking out to understand why it was classified a World Heritage Area.

SubQuestion No : 159

Q.1 The Blue Mountains get their unique colour from -

59

Ans

- 1. drops of oil given out by trees in the region.
- 2. the eucalyptus trees that turn blue in the bright sunlight.
- 3. Merging of sunlight and water droplets with eucalyptus oil.
- 4. water drops as they mix together in the sunlight.

Question ID : 98958011495

Status : Marked For Review

Chosen Option : 4



**Comprehension:**

Read the following passage and answer the questions that follow-

The Blue Mountains, just 90 minutes from Sydney, get their name from the natural blue haze created by vast eucalyptus forests in this World Heritage area. Tiny droplets of oil released from the trees mix with water vapour and sunlight to produce the distinctive colour.

Etched with deep fissures that have been chiselled and shaped over ages from the sandstone of an ancient sea, the Blue Mountains is ideal for the thrilling adventure sport of canyoning. A rope-assisted descent into a canyon or cave, canyoning gives access to a beautiful subterranean world. With its dramatic vistas, soaring forests, deep gorges, waterfalls and hundreds of kilometres of walking trails, the Blue Mountains saves its best for bushwalkers.

A highlight of the Greater Blue Mountains World Heritage Area, Jenolan Caves is a labyrinth of stalactite-lined limestone chasms carved by underground rivers. Set in a deep and secluded valley on the western edge of the Blue Mountains, the pure underground rivers and amazing formations inside the caves make this one of the finest cave systems in the world. With 11 spectacular show caves, underground rivers and awe-inspiring formations, you can explore the caves on a guided day tour, get goose bumps on a ghost tour or enjoy a monthly cave concert with natural acoustics and fairy tale ambience.

Another way to experience the natural splendour of the Blue Mountains is by biking or walking. Blue Mountain Bikes provide a mobile service that meets you with bikes, equipment and maps. You can also discover the Blue Mountains' rich Aboriginal heritage on a walking tour with a local guide. It's best to join a guided tour if you're unfamiliar with the region and weather conditions. A trip to the Blue Mountains wouldn't be complete without visiting Katoomba. There you can ride the Scenic Skyway gondola across Jamison Valley, taking in views of the Three Sisters, Mount Solitary and Katoomba Falls. You can also visit the Scenic Railway, the world's steepest incline railway, descending more than 400 metres (0.25 miles) down the escarpment. This thrilling ride passes through a long tunnel and gorge, ending on the valley floor, and is a huge hit with children.

With thousands of plants from the southern hemisphere and around the world, including the rare Wollemi Pine, the Blue Mountains Botanic Garden at Mount Tomah is a must-see for nature lovers. The cool climate garden is 1000 metres (0.62 miles) above sea level and has stunning views across the area. Wander around the estate and explore the many formal gardens. The region is also worth checking out to understand why it was classified a World Heritage Area.

SubQuestion No : 160

Q.1  
60 Which of the following experiences will a visit to the Jenolan caves NOT provide?

- Ans
- 1. shows featuring popular fairy tales
  - 2. cave concert with natural acoustics
  - 3. underground rivers
  - 4. stalactite formations

Question ID : 98958011496

Status : Answered

**Comprehension:**

Read the following passage and answer the questions that follow-

The Blue Mountains, just 90 minutes from Sydney, get their name from the natural blue haze created by vast eucalyptus forests in this World Heritage area. Tiny droplets of oil released from the trees mix with water vapour and sunlight to produce the distinctive colour.

Etched with deep fissures that have been chiselled and shaped over ages from the sandstone of an ancient sea, the Blue Mountains is ideal for the thrilling adventure sport of canyoning. A rope-assisted descent into a canyon or cave, canyoning gives access to a beautiful subterranean world. With its dramatic vistas, soaring forests, deep gorges, waterfalls and hundreds of kilometres of walking trails, the Blue Mountains saves its best for bushwalkers.

A highlight of the Greater Blue Mountains World Heritage Area, Jenolan Caves is a labyrinth of stalactite-lined limestone chasms carved by underground rivers. Set in a deep and secluded valley on the western edge of the Blue Mountains, the pure underground rivers and amazing formations inside the caves make this one of the finest cave systems in the world. With 11 spectacular show caves, underground rivers and awe-inspiring formations, you can explore the caves on a guided day tour, get goose bumps on a ghost tour or enjoy a monthly cave concert with natural acoustics and fairy tale ambience.

Another way to experience the natural splendour of the Blue Mountains is by biking or walking. Blue Mountain Bikes provide a mobile service that meets you with bikes, equipment and maps. You can also discover the Blue Mountains' rich Aboriginal heritage on a walking tour with a local guide. It's best to join a guided tour if you're unfamiliar with the region and weather conditions. A trip to the Blue Mountains wouldn't be complete without visiting Katoomba. There you can ride the Scenic Skyway gondola across Jamison Valley, taking in views of the Three Sisters, Mount Solitary and Katoomba Falls. You can also visit the Scenic Railway, the world's steepest incline railway, descending more than 400 metres (0.25 miles) down the escarpment. This thrilling ride passes through a long tunnel and gorge, ending on the valley floor, and is a huge hit with children.

With thousands of plants from the southern hemisphere and around the world, including the rare Wollemi Pine, the Blue Mountains Botanic Garden at Mount Tomah is a must-see for nature lovers. The cool climate garden is 1000 metres (0.62 miles) above sea level and has stunning views across the area. Wander around the estate and explore the many formal gardens. The region is also worth checking out to understand why it was classified a World Heritage Area.

SubQuestion No : 161

Q.1  
61



Match the places with experiences

1 Mount Tomah	a) Sharp descent through a narrow valley; underground passages
2 Jenolan Caves	b) sky ride across a valley; breath taking views of mountains
3 Scenic Railway	c) entertaining shows; cave formations
4 Katoomba	d) uncommon varieties of pine trees; protected areas

- Ans
- 1. 1-a), 2-b), 3-d), 4-c)
  - 2. 1-d), 2-c), 3-a), 4-b)
  - 3. 1-a), 2-d), 3-b), 4-c)
  - 4. 1-d), 2-c), 3-b), 4-a)

Question ID : 98958011497  
Status : Answered  
Chosen Option : 2

Comprehension:

KD JOB UPDATES

Read the following passage and answer the questions that follow-

The Blue Mountains, just 90 minutes from Sydney, get their name from the natural blue haze created by vast eucalyptus forests in this World Heritage area. Tiny droplets of oil released from the trees mix with water vapour and sunlight to produce the distinctive colour.

Etched with deep fissures that have been chiselled and shaped over ages from the sandstone of an ancient sea, the Blue Mountains is ideal for the thrilling adventure sport of canyoning. A rope-assisted descent into a canyon or cave, canyoning gives access to a beautiful subterranean world. With its dramatic vistas, soaring forests, deep gorges, waterfalls and hundreds of kilometres of walking trails, the Blue Mountains saves its best for bushwalkers.

A highlight of the Greater Blue Mountains World Heritage Area, Jenolan Caves is a labyrinth of stalactite-lined limestone chasms carved by underground rivers. Set in a deep and secluded valley on the western edge of the Blue Mountains, the pure underground rivers and amazing formations inside the caves make this one of the finest cave systems in the world. With 11 spectacular show caves, underground rivers and awe-inspiring formations, you can explore the caves on a guided day tour, get goose bumps on a ghost tour or enjoy a monthly cave concert with natural acoustics and fairy tale ambience.

Another way to experience the natural splendour of the Blue Mountains is by biking or walking. Blue Mountain Bikes provide a mobile service that meets you with bikes, equipment and maps. You can also discover the Blue Mountains' rich Aboriginal heritage on a walking tour with a local guide. It's best to join a guided tour if you're unfamiliar with the region and weather conditions. A trip to the Blue Mountains wouldn't be complete without visiting Katoomba. There you can ride the Scenic Skyway gondola across Jamison Valley, taking in views of the Three Sisters, Mount Solitary and Katoomba Falls. You can also visit the Scenic Railway, the world's steepest incline railway, descending more than 400 metres (0.25 miles) down the escarpment. This thrilling ride passes through a long tunnel and gorge, ending on the valley floor, and is a huge hit with children.

With thousands of plants from the southern hemisphere and around the world, including the rare Wollemi Pine, the Blue Mountains Botanic Garden at Mount Tomah is a must-see for nature lovers. The cool climate garden is 1000 metres (0.62 miles) above sea level and has stunning views across the area. Wander around the estate and explore the many formal gardens. The region is also worth checking out to understand why it was classified a World Heritage Area.

SubQuestion No : 162

Q.1 What do the river waters do to the cave walls?

62

Ans

- 1. create fearful waterfalls
- 2. create ghosts and fearful images
- 3. give beautiful shapes and patterns
- 4. provide a place to put up sound and light shows

Question ID : 98958011498

Status : Answered

Chosen Option : 3



**Comprehension:**

Read the following passage and answer the questions that follow-

The Blue Mountains, just 90 minutes from Sydney, get their name from the natural blue haze created by vast eucalyptus forests in this World Heritage area. Tiny droplets of oil released from the trees mix with water vapour and sunlight to produce the distinctive colour.

Etched with deep fissures that have been chiselled and shaped over ages from the sandstone of an ancient sea, the Blue Mountains is ideal for the thrilling adventure sport of canyoning. A rope-assisted descent into a canyon or cave, canyoning gives access to a beautiful subterranean world. With its dramatic vistas, soaring forests, deep gorges, waterfalls and hundreds of kilometres of walking trails, the Blue Mountains saves its best for bushwalkers.

A highlight of the Greater Blue Mountains World Heritage Area, Jenolan Caves is a labyrinth of stalactite-lined limestone chasms carved by underground rivers. Set in a deep and secluded valley on the western edge of the Blue Mountains, the pure underground rivers and amazing formations inside the caves make this one of the finest cave systems in the world. With 11 spectacular show caves, underground rivers and awe-inspiring formations, you can explore the caves on a guided day tour, get goose bumps on a ghost tour or enjoy a monthly cave concert with natural acoustics and fairy tale ambience.

Another way to experience the natural splendour of the Blue Mountains is by biking or walking. Blue Mountain Bikes provide a mobile service that meets you with bikes, equipment and maps. You can also discover the Blue Mountains' rich Aboriginal heritage on a walking tour with a local guide. It's best to join a guided tour if you're unfamiliar with the region and weather conditions. A trip to the Blue Mountains wouldn't be complete without visiting Katoomba. There you can ride the Scenic Skyway gondola across Jamison Valley, taking in views of the Three Sisters, Mount Solitary and Katoomba Falls. You can also visit the Scenic Railway, the world's steepest incline railway, descending more than 400 metres (0.25 miles) down the escarpment. This thrilling ride passes through a long tunnel and gorge, ending on the valley floor, and is a huge hit with children.

With thousands of plants from the southern hemisphere and around the world, including the rare Wollemi Pine, the Blue Mountains Botanic Garden at Mount Tomah is a must-see for nature lovers. The cool climate garden is 1000 metres (0.62 miles) above sea level and has stunning views across the area. Wander around the estate and explore the many formal gardens. The region is also worth checking out to understand why it was classified a World Heritage Area.

SubQuestion No : 163

Q.1 Where are you likely to read this piece?

63

Ans

- 1. personal diary
- 2. essay book
- 3. travel brochure
- 4. newspaper report

Question ID : 98958011499

Status : Answered

Chosen Option : 3



Q.1 Select the most appropriate option to substitute the underlined segment in the given sentence. If there is no need to substitute it, select No improvement.

64

South Asia, reaching from Afghanistan in the west to Bangladesh in the east, is home to at last six hundred languages belonging to six large language families.

Ans

1. home to at least six hundred language
2. home to at least six hundred languages
3. No improvement
4. home to at most six hundred languages

Question ID : 98958011454

Status : Answered

Chosen Option : 2

Q.1 Select the most appropriate meaning of the given idiom.

65

to hold a brief for

Ans

1. to support someone's cause
2. to write a speech for someone
3. to wait for someone
4. to upset someone's campaign

Question ID : 98958011480

Status : Answered

Chosen Option : 3

Q.1 Select the word, which means the same as the group of words given.

66

something which is easily breakable

Ans

1. fertile
2. fragile
3. docile
4. futile

Question ID : 98958011486

Status : Answered

Chosen Option : 2

#### Comprehension:

In the following passage, some words have been deleted. Fill in the blanks with the help of the alternatives given. Select the most appropriate option for each number.

The modern CEO is very much at the \_\_\_\_\_ (1) of the political and media stage. It leaves them open to being identified as \_\_\_\_\_ (2) for economic injustice. The increasingly public role taken \_\_\_\_\_ (3) CEOs is related to a renewed corporate focus on \_\_\_\_\_ (4) social responsibility. Firms must now balance between making profits and fulfilling corporate social \_\_\_\_\_ (5).

SubQuestion No : 167

Q.1 Select the most appropriate option to fill in blank No.1.

67

- Ans
- 1. beginning
  - 2. margins
  - 3. background
  - 4. forefront

Question ID : 98958011464  
 Status : Answered  
 Chosen Option : 4

**Comprehension:**

In the following passage, some words have been deleted. Fill in the blanks with the help of the alternatives given. Select the most appropriate option for each number.

The modern CEO is very much at the \_\_\_\_\_ (1) of the political and media stage. It leaves them open to being identified as \_\_\_\_\_ (2) for economic injustice. The increasingly public role taken \_\_\_\_\_ (3) CEOs is related to a renewed corporate focus on \_\_\_\_\_ (4) social responsibility. Firms must now balance between making profits and fulfilling corporate social \_\_\_\_\_ (5).

SubQuestion No : 168

Q.1  
68 Select the most appropriate option to fill in blank No.2.

- Ans
- 1. scapegoats
  - 2. accused
  - 3. retainers
  - 4. victims

Question ID : 98958011465  
 Status : Answered  
 Chosen Option : 1

**Comprehension:**

In the following passage, some words have been deleted. Fill in the blanks with the help of the alternatives given. Select the most appropriate option for each number.

The modern CEO is very much at the \_\_\_\_\_ (1) of the political and media stage. It leaves them open to being identified as \_\_\_\_\_ (2) for economic injustice. The increasingly public role taken \_\_\_\_\_ (3) CEOs is related to a renewed corporate focus on \_\_\_\_\_ (4) social responsibility. Firms must now balance between making profits and fulfilling corporate social \_\_\_\_\_ (5).

SubQuestion No : 169

Q.1  
69 Select the most appropriate option to fill in blank No.3.

- Ans
- 1. with
  - 2. by
  - 3. from
  - 4. on

Question ID : 98958011466  
 Status : Answered  
 Chosen Option : 2

**Comprehension:**

In the following passage, some words have been deleted. Fill in the blanks with the help of the alternatives given. Select the most appropriate option for each number.

The modern CEO is very much at the \_\_\_\_\_ (1) of the political and media stage. It leaves them open to being identified as \_\_\_\_\_ (2) for economic injustice. The increasingly public role taken \_\_\_\_\_ (3) CEOs is related to a renewed corporate focus on \_\_\_\_\_ (4) social responsibility. Firms must now balance between making profits and fulfilling corporate social \_\_\_\_\_ (5).

SubQuestion No : 170

Q.1  
70 Select the most appropriate option to fill in blank No.4.

- Ans
- 1. his
  - 2. their
  - 3. its
  - 4. our

Question ID : 98958011467

Status : Answered

Chosen Option : 2

**Comprehension:**

In the following passage, some words have been deleted. Fill in the blanks with the help of the alternatives given. Select the most appropriate option for each number.

The modern CEO is very much at the \_\_\_\_\_ (1) of the political and media stage. It leaves them open to being identified as \_\_\_\_\_ (2) for economic injustice. The increasingly public role taken \_\_\_\_\_ (3) CEOs is related to a renewed corporate focus on \_\_\_\_\_ (4) social responsibility. Firms must now balance between making profits and fulfilling corporate social \_\_\_\_\_ (5).

SubQuestion No : 171

Q.1  
71 Select the most appropriate option to fill in blank No.5.

- Ans
- 1. priority
  - 2. outcome
  - 3. target
  - 4. responsibility

Question ID : 98958011468

Status : Answered

Chosen Option : 4

Q.1  
72 Select the antonym of the given word.

UNCANNY

- Ans
- 1. ordinary
  - 2. logical
  - 3. fantastic
  - 4. wise

Question ID : 98958011476



Status : **Answered**  
Chosen Option : 1

Q.1 73 Select the word, which means the same as the group of words given.

method of talking in a roundabout way

- Ans
- 1. elocution
  - 2. circumlocution
  - 3. talkative
  - 4. convoluted

Question ID : **98958011485**  
Status : **Answered**  
Chosen Option : 2

Q.1 74 Select the word, which means the same as the group of words given.

a person claiming to be superior in culture and intellect to others

- Ans
- 1. elite
  - 2. noble
  - 3. highbrow
  - 4. patrician

Question ID : **98958011488**  
Status : **Answered**  
Chosen Option : 1

Q.1 75 Select the word, which means the same as the group of words given.

identification with another person's feelings

- Ans
- 1. charity
  - 2. empathy
  - 3. humanity
  - 4. antipathy

Question ID : **98958011487**  
Status : **Answered**  
Chosen Option : 2

Q.1 76 Select the most appropriate option to substitute the underlined segment in the given sentence. If there is no need to substitute it, select No improvement.

Though we have developed the technology for process wastewater with the textile industry, it can be used for any other industrial wastewater.

- Ans
- 1. processing wastewater from the textile industry
  - 2. processing wastewater in the textile industry
  - 3. No improvement

4. processed wastewater from the textile industry

Question ID : 98958011453  
Status : Answered  
Chosen Option : 1

Q.1  
77 Select the synonym of the given word.

CONTAMINATING

- Ans  1. polluting  
 2. encompassing  
 3. investing  
 4. containing

Question ID : 98958011471  
Status : Answered  
Chosen Option : 1

Q.1  
78 Select the most appropriate option to substitute the underlined segment in the given sentence. If there is no need to substitute it, select No improvement.

Genetic influx from Central Asia in the Bronze Age was strongly male-driven, consistent with the patriarchal social structure attributing to the Indo-European pastoralist society.

- Ans  1. No improvement  
 2. to be attributed to the Indo-European  
 3. attributed by the Indo-European  
 4. attributed to the Indo-European

Question ID : 98958011456  
Status : Answered  
Chosen Option : 4

Q.1  
79 Select the antonym of the given word.

DESTINATION

- Ans  1. target  
 2. departure  
 3. origin  
 4. arrival

Question ID : 98958011478  
Status : Answered  
Chosen Option : 4

Q.1  
80 Select the antonym of the given word.

FERTILE

- Ans  1. damaging  
 2. fresh  
 3. barren  
 4. enemy



Question ID : 98958011477  
Status : Answered  
Chosen Option : 3

Q.1  
81 Select the synonym of the given word.

COMPLIANT

- Ans
- 1. protestor
  - 2. resolute
  - 3. submissive
  - 4. obdurate

Question ID : 98958011472  
Status : Answered  
Chosen Option : 3

Q.1  
82 Select the most appropriate meaning of the given idiom.

to blow hot and cold

- Ans
- 1. to exhale heat and inhale cold
  - 2. to show favour and disfavour alternately
  - 3. to work like bellows and blow air
  - 4. to be friendly and unfriendly at the same time

Question ID : 98958011482  
Status : Answered  
Chosen Option : 4

Q.1  
83 Select the antonym of the given word.

SEVER

- Ans
- 1. keep
  - 2. remove
  - 3. trim
  - 4. unite

Question ID : 98958011475  
Status : Answered  
Chosen Option : 4

Q.1  
84 Select the wrongly spelt word.

- Ans
- 1. receipt
  - 2. recieipient
  - 3. recent
  - 4. recede

Question ID : 98958011490  
Status : Answered  
Chosen Option : 2

Q.1  
85

Identify the segment in the sentence, which contains the grammatical error.

In the ideal 21st century classroom, children are actually excited about going to school, and there is little or no discipline problems because everyone is eager to learn.

- Ans
- 1. children are actually excited
  - 2. everyone is eager
  - 3. there is little
  - 4. In the ideal 21st century classroom

Question ID : 98958011448  
Status : Answered  
Chosen Option : 4

Q.1 Identify the segment in the sentence, which contains the grammatical error.

86

There is something special about life: the closer one looks to these performances, the more impressive the show becomes.

- Ans
- 1. something special about
  - 2. the more impressive
  - 3. the closer one looks to
  - 4. these performances

Question ID : 98958011449  
Status : Answered  
Chosen Option : 4

Q.1 Select the most appropriate word to fill in the blank.

87

Depression is now the single largest illness in the world; suicide is thus the second leading cause of death among \_\_\_\_\_ and young adults.

- Ans
- 1. adolescents
  - 2. infants
  - 3. girls
  - 4. boys

Question ID : 98958011460  
Status : Answered  
Chosen Option : 1

Q.1 Select the wrongly spelt word.

88

- Ans
- 1. ascent
  - 2. assension
  - 3. accent
  - 4. assertion

Question ID : 98958011489  
Status : Answered  
Chosen Option : 2

Q.1 Select the most appropriate word to fill in the blank.

89

Cells in our body have built-in \_\_\_\_\_ to divide and grow to optimum size.

- Ans
- 1. mechanism
  - 2. tools

3. approaches

4. appliances

Question ID : 98958011462  
Status : Answered  
Chosen Option : 1

Q.1 Select the most appropriate meaning of the given idiom.

90

to make no bones about

Ans  1. to state something clearly

2. to make something unsubstantial

3. to consume only the fleshy part

4. to reveal the hidden structure

Question ID : 98958011483  
Status : Marked For Review  
Chosen Option : 1

Q.1 Select the most appropriate option to substitute the underlined segment in the given sentence. If there is no need to substitute it, select No improvement.

91

The avalanche of new data have been as overwhelming that many scientists who were skeptical about Bronze Age migrations into India have changed their opinions.

Ans  1. No improvement

2. The avalanche of new data has been so overwhelming

3. The avalanche of new data has been as overwhelming

4. The avalanche of new data have been so overwhelming

Question ID : 98958011457  
Status : Answered  
Chosen Option : 2

Q.1 Select the most appropriate word to fill in the blank.

92

Around 1,900–4,200 years before the present time was a time of \_\_\_\_\_ change in India, characterized by the de-urbanization of the Indus Valley civilization.

Ans  1. profound

2. weighty

3. reflective

4. promising

Question ID : 98958011458  
Status : Answered  
Chosen Option : 4

Q.1 Select the most appropriate option to substitute the underlined segment in the given sentence. If there is no need to substitute it, select No improvement.

93

A phenomenon called the polar vortex has hit central and eastern parts of the United States. It has brought with it snow, brutally cold temperatures and potentially life-threatening wind chill.

Ans  1. No improvement

2. potential life-threatening wind chill.

3. potentially life-threaten windy chills.

4. potentially life-threatened wind chill.

Question ID : 98958011455

Status : Answered

Chosen Option : 2

Q.1  
94 Select the wrongly spelt word.

- Ans
- 1. resplendent
  - 2. resistance
  - 3. reseptacle
  - 4. resurrect

Question ID : 98958011493

Status : Answered

Chosen Option : 3

Q.1  
95 Select the wrongly spelt word.

- Ans
- 1. confirmed
  - 2. contagious
  - 3. contiguous
  - 4. confarmist

Question ID : 98958011492

Status : Answered

Chosen Option : 4

Q.1  
96 Select the word, which means the same as the group of words given.

person who pretends to have special knowledge or skill

- Ans
- 1. egotist
  - 2. student
  - 3. scholar
  - 4. charlatan

Question ID : 98958011484

Status : Answered

Chosen Option : 4

Q.1  
97 Select the synonym of the given word.

STIMULATION

- Ans
- 1. indolence
  - 2. enthusiasm
  - 3. provocation
  - 4. eagerness

Question ID : 98958011469

Status : Answered

Chosen Option : 2

**Q.1** 98 Select the antonym of the given word.

DYE

- Ans  1. blend  
 2. wash  
 3. bleach  
 4. live

Question ID : 98958011474

Status : Marked For Review

Chosen Option : 2

**Q.1** 99 Select the wrongly spelt word.

- Ans  1. alegorical  
 2. alpine  
 3. altitude  
 4. allergic

Question ID : 98958011491

Status : Answered

Chosen Option : 1

**Q.2** 00 Select the most appropriate word to fill in the blank.

The study has uncovered differences in how the brain \_\_\_\_\_ visual information in patients with various types of lazy eye.

- Ans  1. processes  
 2. changes  
 3. transforms  
 4. exchanges

Question ID : 98958011459

Status : Answered

Chosen Option : 1



## Recruitment of Sub-Inspector in Delhi Police, CAPFs and Assistant Sub-Inspector in CISF Examination, 2018

Roll No. :	
Registration No.	
Name :	
Exam Venue :	
Exam Time :	3:00 PM - 5:00 PM
Exam Date :	15/03/2019

Section : SI CPO

Q.1 Three of the following four number-pairs are alike in a certain way and one is different. Identify the different one.

- Ans
- 1. 16 : 36
  - 2. 25 : 49
  - 3. 48 : 81
  - 4. 64 : 100

Question ID : 98958011985  
 Status : Not Answered  
 Chosen Option : --

Q.2 Three of the following four words are alike in a certain way and one is different. Find the odd one out.

- Ans
- 1. Escalator
  - 2. Climb
  - 3. Staircase
  - 4. Ladder

Question ID : 98958011964  
 Status : Answered  
 Chosen Option : 2

Q.3 Select the correct mirror image of the given figure, when the mirror image is placed at the right side.

B K U C L 3 1

- Ans
- 1. 1 E J C U X B
  - 2. B K U C L 3 1
  - 3. B K U C L 3 1
  - 4. B K U C L 3 1

Question ID : 98958012003  
 Status : Answered  
 Chosen Option : 4

Q.4 Which number will replace the question mark (?) in the following series?

1, 5, 5, 25, ?, 3125

- Ans
- 1. 215
  - 2. 125
  - 3. 225
  - 4. 375

Question ID : 98958011980  
 Status : Answered  
 Chosen Option : 2

Q.5 If X = 48 and ACT = 48, then TALL = \_\_\_\_\_.

- Ans
- 1. 88
  - 2. 92
  - 3. 90
  - 4. 45

Question ID : 98958011974  
 Status : Answered  
 Chosen Option : 3

Q.6 Select the word-pair in which the two words are related in the same way as are the two words in the following word-pair.

Astronomer : Observatory

- Ans
- 1. Doctor : Nurse
  - 2. Farmer : Field
  - 3. Supervisor : Officer
  - 4. Museum : Visitor

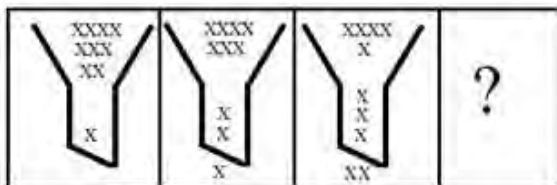
Question ID : 98958011968  
 Status : Not Attempted and Marked For Review  
 Chosen Option : --

Q.7 In a certain code language, HAMMER is written as GBLNDS. How will NEEDLE be written as in that language?

- Ans
- 1. OFLEKF
  - 2. DLENEE
  - 3. MFENKF
  - 4. MFDEKF

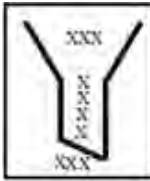
Question ID : 98958011972  
 Status : Answered  
 Chosen Option : 4

Q.8 Choose the option that will complete the given series:



Ans

1.



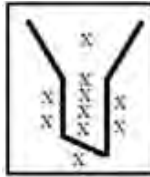
2.



3.



4.



Question ID : 98958011997  
 Status : Answered  
 Chosen Option : 1

Q.9 Arjun starts walking towards the east. After walking 50 m, he turns to his left and walks 15 m straight. Then, he turns to his left and walks 30 m straight. Again, he turns to his the left and walks a distance of 15 m. How far is he from the starting point?

- Ans  1. 40 m  
 2. 30 m  
 3. 10 m  
 4. 20 m

Question ID : 98958011994  
 Status : Answered  
 Chosen Option : 4

Q.1 Two statements are given, followed by two conclusions numbered I and II. Assuming the statements to be true, even if they seem to be at variance with commonly known facts, decide which of the conclusions logically follow(s) from the statements.

**Statements:**  
 Some dancers are students.  
 Some students are singers.

**Conclusions:**  
 I. Some singers are dancers.  
 II. No singer is a dancer.

- Ans  1. Either conclusion I or II follows.  
 2. Only conclusion I follows.  
 3. Only conclusion II follows.  
 4. Neither conclusion I nor II follows.

Question ID : 98958011977  
 Status : Answered

Chosen Option : 3

Q.1  
1 Which two signs should be interchanged to make the given equation correct?

$$24 - 8 \div 5 + 5 \times 3 = 13$$

- Ans
- 1.  $\times$  and  $+$
  - 2.  $\div$  and  $-$
  - 3.  $\div$  and  $+$
  - 4.  $\times$  and  $\div$

Question ID : 98958011990  
Status : Answered  
Chosen Option : 2


Q.1  
2 Identify the number that does NOT belong in the given series.

0, 6, 24, 60, 120, 216

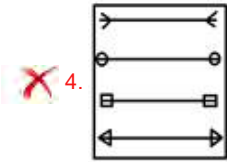
- Ans
- 1. 6
  - 2. 216
  - 3. 60
  - 4. 120

Question ID : 98958011978  
Status : Not Attempted and Marked For Review  
Chosen Option : --

Q.1  
3 Select the option that will come next in the following figure series.



- Ans
- 1.
  - 2.
  - 3.



Question ID : 98958011996  
Status : Answered  
Chosen Option : 3

Q.1 Select the option that is related to the third number in the same way as the second number is related to the first number.

4

4262 : 4271 :: 2139 : \_\_\_\_\_

- Ans  1. 2346  
 2. 7132  
 3. 9521  
 4. 2572

Question ID : 98958011981  
Status : Answered  
Chosen Option : 1

Q.1 Three of the following four letter-clusters are alike in a certain way and one is different. Find the odd one out.

5

- Ans  1. TVXZ  
 2. DFHJ  
 3. LMOQ  
 4. GIKM

Question ID : 98958011963  
Status : Answered  
Chosen Option : 3

Q.1 Which letter will replace the question mark (?) in the following series?

6

X, V, T, R, P, ?

- Ans  1. N  
 2. S  
 3. Q  
 4. O

Question ID : 98958011958  
Status : Answered  
Chosen Option : 1

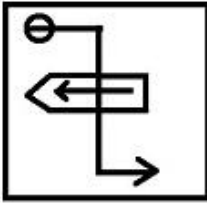
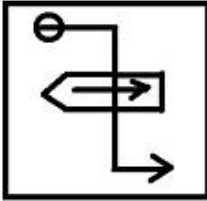
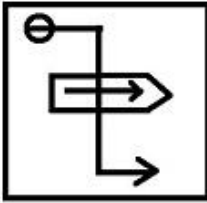
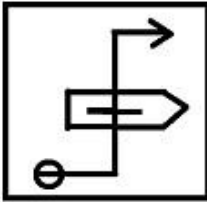
Q.1 Select the correct mirror image of the given figure when the mirror is placed on the right of the figure.

7





Ans

 1. 2. 3. 4.

Question ID : 98958012002  
 Status : Answered  
 Chosen Option : 2

Q.1  
8 'Flowers' is related to 'Bouquet' in the same way as 'Cattle' is related to '\_\_\_\_\_':

- Ans
- 1. Cow
  - 2. Gang
  - 3. Swarm
  - 4. Herd

Question ID : 98958011966  
 Status : Answered  
 Chosen Option : 4

Q.1  
9 Select the set of numbers that is similar to the following set.

(4, 3, 19)

- Ans
- 1. (3, 5, 25)
  - 2. (8, 5, 96)
  - 3. (6, 4, 40)
  - 4. (5, 9, 28)

Question ID : 98958011989  
 Status : Answered

Chosen Option : 3

Q.2 Two statements are given, followed by two conclusions numbered I and II. Assuming the statements to be true, even if they seem to be at variance with commonly known facts, decide which of the conclusions logically follow(s) from the statements.

**Statements:**

- All vans are cats.
- All jeeps are cats.

**Conclusions:**

- I. All vans are jeeps.  
II. Some jeeps are vans.

- Ans
- 1. Both conclusions I and II follow
  - 2. Only conclusion I follows
  - 3. Only conclusion II follows
  - 4. Neither conclusion I nor conclusion II follows

Question ID : 98958011976

Status : Answered

Chosen Option : 4

Q.2 Select the option that is related to the fourth term in the same way as the first term is related to the second term.

1

DFZ : IUU :: \_\_\_\_\_ : KLT

- Ans
- 1. EIY
  - 2. FHX
  - 3. EHW
  - 4. FIY

Question ID : 98958011971

Status : Answered

Chosen Option : 4

Q.2 Select the option that is related to the third word in the same way as the second word is related to the first word.

2

Body : Vitamins :: Crops : \_\_\_\_\_

- Ans
- 1. Fertilizer
  - 2. Water
  - 3. Farmer
  - 4. Air

Question ID : 98958011967

Status : Answered

Chosen Option : 2

Q.2 If in a certain code language , TIGER is written as SUHFHDFQS, then which word will be coded as GINPQRSITDF?

3

- Ans
- 1. HORSE
  - 2. HORTF
  - 3. HERBS
  - 4. HOESR

Question ID : 98958011973

Status : Answered

Chosen Option : 1

Q.2 Three of the following four number-pairs are alike in a certain way and one is different. Identify the different one.

4

- Ans
- 1. 25 : 65
  - 2. 28 : 82
  - 3. 62 : 26
  - 4. 46 : 64

Question ID : 98958011986

Status : Answered

Chosen Option : 1

Q.2 Three of the following four word-pairs are alike in a certain way and one is different. Find the odd one out.

5

- Ans
- 1. Morning : Night
  - 2. Touch : Push
  - 3. Speak : Shout
  - 4. Refuse : Deny

Question ID : 98958011965

Status : Answered





Chosen Option : 4

Q.2 Select the Venn diagram that represents the correct relationship between the following classes.

6

Students, Players, Audience

Ans

- 1. 
- 2. 
- 3. 
- 4. 

Question ID : 98958012005

Status : Not Attempted and Marked For Review  
Chosen Option : --

Q.2 Kartik started walking from a mall. First, he walked 8 km towards the north. From there, he turned right and walked 3 km. Then, he turned right and walked 5 km. Again, he turned right and walked 7 km. What is the shortest distance from the mall to Kartik's final location?

- Ans
- 1. 10 km
  - 2. 5 km
  - 3. 3 km
  - 4. 7 km

Question ID : 98958011993  
Status : Answered  
Chosen Option : 2

Q.2 Select the option that will come next in the following figure series.



- Ans
- 1.
  - 2.
  - 3.
  - 4.

Question ID : 98958011995  
Status : Answered  
Chosen Option : 3

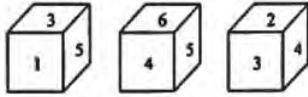
Q.2 Select the option that is related to the third term in the same way as the second term is related to the first term.

9  
PRODUCT : TCUDORP :: FRACTION : \_\_\_\_\_

- Ans
- 1. NOITCARF
  - 2. CTOINAFR
  - 3. CTIONAFR
  - 4. NOTICARF

Question ID : 98958011970  
 Status : Answered  
 Chosen Option : 1

Q.3 Three different positions of the same dice are shown. What will be the number on the face opposite to the side having '1'?



- Ans
- 1. 3
  - 2. 6
  - 3. 2
  - 4. 4

Question ID : 98958011999  
 Status : Answered  
 Chosen Option : 4

Q.3 In a certain code language, TANK is written as 7-26-13-16. How will CARGO be written as in the same code language?

- Ans
- 1. 24-26-9-20-15
  - 2. 24-26-18-20-12
  - 3. 24-26-9-20-12
  - 4. 23-01-9-20-12

Question ID : 98958011975  
 Status : Answered  
 Chosen Option : 3

Q.3 Select the word-pair in which the two words are related in the same way as are the two words in the following word-pair.

Needle : Sew

- Ans
- 1. Pen : Pencil
  - 2. Chisel : Carve
  - 3. Axe : Handle
  - 4. Gun : Bullet

Question ID : 98958011969  
 Status : Answered  
 Chosen Option : 2

Q.3 Select the option that is related to the third number in the same way as the second number is related to the first number.

12 : 72 :: 26 : \_\_\_\_

- Ans
- 1. 160
  - 2. 156
  - 3. 155
  - 4. 165

Question ID : 98958011982  
 Status : Answered



Chosen Option : 2

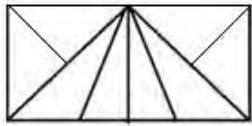
Q.3 Select the number-pair in which the two numbers are NOT related in the same way as are the two numbers of the given pair.

28 : 36

- Ans  1. 63 : 72  
 2. 119 : 153  
 3. 91 : 117  
 4. 133 : 171

Question ID : 98958011983  
 Status : Not Attempted and Marked For Review  
 Chosen Option : --

Q.3 How many triangles are there in the following figure?



- Ans  1. 20  
 2. 16  
 3. 14  
 4. 12


Question ID : 98958011998  
 Status : Answered  
 Chosen Option : 2

Q.3 Select the Venn diagram that represents the correct relationship between the following classes.

Teachers, Singers, Mothers

- Ans  1.   
 2.   
 3.

✓ 4.



Question ID : 98958012007

Status : Answered

Chosen Option : 4

Q.3 Select the correct alternative to indicate the arrangement of the following words in a logical and meaningful order.

7

1. Execution
2. Planning
3. Thinking
4. Feedback
5. Idea

Ans  1. 3, 2, 5, 1, 4 2. 3, 5, 2, 1, 4 3. 2, 3, 4, 5, 1 4. 4, 5, 2, 1, 3

Question ID : 98958011960

Status : Answered

Chosen Option : 2

Q.3 Three of the following four number-pairs are alike in a certain way and one is different. Identify the different one.

8

Ans  1. 23 : 29 2. 3 : 5 3. 17 : 21 4. 11 : 13

Question ID : 98958011987

Status : Answered

Chosen Option : 3

Q.3 Three of the following four numbers are alike in a certain way and one is different. Identify the different one.

9

Ans  1. 33 2. 27 3. 25 4. 15

Question ID : 98958011984

Status : Answered

Chosen Option : 3

Q.4

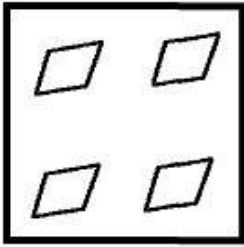
0

The sequence of folding a piece of square paper and the manner in which the folded paper has been cut is shown. How would this paper look when unfolded?

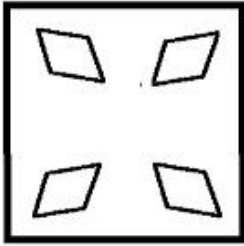


Ans


1.



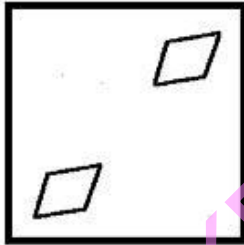
2.



3.



4.



KD JOB UPDATES

Question ID : 98958012004  
 Status : Answered  
 Chosen Option : 4

Q.4 Which two signs should be interchanged to make the given equation correct?

$$15 \div 15 \times 10 - 10 + 5 = 15$$

Ans

1.  $\div$  and  $-$

2.  $\div$  and  $\times$

3.  $\times$  and  $-$

4.  $+$  and  $-$

Question ID : 98958011992  
 Status : Answered  
 Chosen Option : 4

Q.4 Three of the following four letter-clusters are alike in a certain way and one is different. Find the odd one out.

2

- Ans
- 1. MOQSU
  - 2. EGIKM
  - 3. NPRTV
  - 4. IKLPS

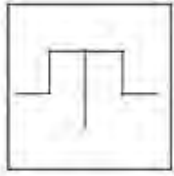
Question ID : 98958011962

Status : Answered

Chosen Option : 4

Q.4 Select the option in which the given figure is embedded.

3



Ans

- 1.
- 2.
- 3.
- 4.

Question ID : 98958012000

Status : Answered

Chosen Option : 3

Q.4 If '+' means '-', '-' means '×', '×' means '÷' and '÷' means '+', then what will be the value of following expression?

4

$$14 - 3 + 10 \times 5 \div 5$$

- Ans
- 1. 65
  - 2. 48
  - 3. 45
  - 4. 40

Question ID : 98958011991

Status : Answered

Chosen Option : 3

Q.4  
5 Which number will replace the question mark (?) in the following series?

60, 64, 32, 36, 18, ?

- Ans
- 1. 11
  - 2. 15
  - 3. 20
  - 4. 22

Question ID : 98958011979





Status : Answered

Chosen Option : 4

Q.4  
6 Select the Venn diagram that represents the correct relationship between the following classes.

Stationery, Pen, Nib

Ans

- 1. 
- 2. 
- 3. 
- 4. 

Question ID : 98958012006

Status : Answered

Chosen Option : 1

Q.4  
7 Which letter-cluster will replace the question mark (?) in the following series?

GXB, JVD, MTF, PRH, ?

- Ans
- 1. RPJ
  - 2. SPJ
  - 3. SQJ



4. RQI

Question ID : 98958011959  
Status : Answered  
Chosen Option : 2

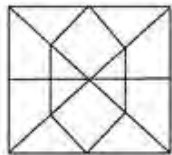
Q.4  
8 Select the set of numbers that is similar to the following set.

(11, 16, 31)

- Ans
- 1. (19, 24, 31)
  - 2. (17, 22, 37)
  - 3. (29, 34, 41)
  - 4. (23, 28, 31)

Question ID : 98958011988  
Status : Answered  
Chosen Option : 2

Q.4  
9 Select the option that is embedded in the following figure.



- Ans
- 1.
  - 2.
  - 3.
  - 4.

Question ID : 98958012001  
Status : Answered  
Chosen Option : 3

Q.5 Select the correct alternative to indicate the arrangement of the following words in a logical and meaningful order.

0

1. Childhood
2. Adulthood
3. Infancy
4. Old age
5. Adolescence

- Ans
- 1. 5, 1, 3, 2, 4
  - 2. 3, 1, 5, 2, 4
  - 3. 5, 4, 3, 2, 1
  - 4. 2, 1, 5, 3, 4

Question ID : 98958011961  
Status : Answered  
Chosen Option : 2

Q.5 The merger of \_\_\_\_\_ and \_\_\_\_\_ with Bank of Baroda will make it the third largest bank in India.

1

- Ans
- 1. Dena Bank, Vijaya Bank
  - 2. Allahabad Bank, Dena Bank
  - 3. Dena Bank, Punjab National Bank
  - 4. Punjab National Bank, Vijaya Bank

Question ID : 98958011817  
Status : Answered  
Chosen Option : 3

Q.5 In January 2019, ISRO announced that it would select over 100 students from across India and give them practical experience of how satellites are built under the new \_\_\_\_\_.

2

- Ans
- 1. Young Scientist Program
  - 2. Young Genius Program
  - 3. Smart Achiever Program
  - 4. Smart Scientist Program

Question ID : 98958011818  
Status : Answered  
Chosen Option : 1

Q.5 Known as Ayesha to family and friends, this princess married Sawai Man Singh II Bahadur and was known to the world as \_\_\_\_\_.

3

- Ans
- 1. Maharani Durga Devi
  - 2. Rani Sita Devi
  - 3. Rani Vijaya Devi
  - 4. Maharani Gayatri Devi

Question ID : 98958011842  
Status : Not Answered  
Chosen Option : --

Q.5  
4 \_\_\_\_\_, locally known as 'Vallam Kali', is a traditional game, mainly conducted during the harvest festival Onam in Kerala.

- Ans
- 1. Boat races
  - 2. Cock fights
  - 3. Bull fights
  - 4. Elephant races

Question ID : 98958011812  
Status : Answered  
Chosen Option : 1

Q.5  
5 The Governor of an Indian state generally holds office for a period of \_\_\_\_\_ years.

- Ans
- 1. 4
  - 2. 5
  - 3. 7
  - 4. 3

Question ID : 98958011852  
Status : Answered  
Chosen Option : 2

Q.5  
6 The Satya Shodhak Samaj was founded by:

- Ans
- 1. Jyotiba Phule
  - 2. Swami Dayanand Saraswati
  - 3. Swami Vivekanand
  - 4. Raja Ram Mohan Roy

Question ID : 98958011836  
Status : Answered  
Chosen Option : 1

Q.5  
7 Gautam Gambhir made his One Day International debut in 2003 in \_\_\_\_\_.

- Ans
- 1. Dhaka
  - 2. Mumbai
  - 3. Kolkata
  - 4. Colombo

Question ID : 98958011854  
Status : Answered  
Chosen Option : 3

Q.5  
8 In December 2018, India's heaviest satellite \_\_\_\_\_ went into orbit on a French rocket to help boost broadband internet services in India.

- Ans
- 1. GSAT-6
  - 2. GSAT-19

3. GSAT-17

4. GSAT-11

Question ID : 98958011823

Status : Answered

Chosen Option : 3

Q.5  
9 Saint Kabir got his spiritual training from a guru named \_\_\_\_\_.

Ans  1. Sarvananda

2. Ramananda

3. Chidananda Saraswati

4. Muktananda

Question ID : 98958011837

Status : Not Answered

Chosen Option : --

Q.6  
0 The Indian Government has banned the import of \_\_\_\_\_ from China till April 23, 2019, or until further orders.

Ans  1. Milk and milk products

2. Vehicles

3. Minerals

4. Cotton

Question ID : 98958011813

Status : Not Answered

Chosen Option : --

Q.6  
1 The theme for World Environment Day 2018 hosted in India was \_\_\_\_\_.

Ans  1. Go Wild for Life

2. Connecting People to Nature

3. Beat Plastic Pollution

4. Reduce, Reuse, Recycle

Question ID : 98958011824

Status : Answered

Chosen Option : 2

Q.6  
2 The Peacock Throne was commissioned by \_\_\_\_\_.

Ans  1. Aurangzeb

2. Shah Jahan

3. Humayun

4. Akbar

Question ID : 98958011838

Status : Not Answered

Chosen Option : --

Q.6  
3 Which of the following is NOT a part of India's first indigenous anti-nuclear medical kit?

- Ans
- 1. Prussian blue tablet
  - 2. Anti-gamma ray skin ointment
  - 3. Ca-EDTA Respiratory Fluid
  - 4. Saline solution

Question ID : 98958011827

Status : Not Answered

Chosen Option : --

Q.6  
4 The carbon-based substance used in modern day pencils is \_\_\_\_\_.

- Ans
- 1. Chaoite
  - 2. Coal
  - 3. Graphite
  - 4. Silicon

Question ID : 98958011829

Status : Answered

Chosen Option : 3

Q.6  
5 The National Food Security Act was passed in the year \_\_\_\_\_.

- Ans
- 1. 2009
  - 2. 2011
  - 3. 2013
  - 4. 2014

Question ID : 98958011851

Status : Not Answered

Chosen Option : --

Q.6  
6 'The Royal Tombs of Golconda', 'The Snake-Charmer' and 'The Queen's Rival' are poems by:

- Ans
- 1. Sarojini Naidu
  - 2. Rajendra Prasad
  - 3. Shashi Tharoor
  - 4. Atal Bihari Vajpayee

Question ID : 98958011846

Status : Answered

Chosen Option : 1

Q.6  
7 Who was the first recipient of Jnanpith Award?

- Ans
- 1. Amitav Ghosh



- 2. Mahadevi Verma
- 3. Krishna Sobti
- 4. G. Sankara Kurup

Question ID : 98958011844  
Status : Not Answered  
Chosen Option : --

Q.6  
8 Manikarnika Tambe is better known in history as \_\_\_\_\_.

- Ans
- 1. Jodhabai
  - 2. Rani Padmini
  - 3. Rani Laxmibai
  - 4. Ahilyabai Holkar

Question ID : 98958011841  
Status : Answered  
Chosen Option : 3

Q.6  
9 Name the Congress leader who is known for his/her extraordinary oratory skills.

- Ans
- 1. Rahul Gandhi
  - 2. Jyotiraditya Scindia
  - 3. Sonia Gandhi
  - 4. Shashi Tharoor

Question ID : 98958011848  
Status : Answered  
Chosen Option : 4

Q.7  
0 Name the Chief Minister of Gujarat who did not take a single day off in the 13 years of service.

- Ans
- 1. Shankarsingh Vaghela
  - 2. Chimanbhai Patel
  - 3. Narendra Modi
  - 4. Keshubhai Patel

Question ID : 98958011845  
Status : Answered  
Chosen Option : 3

Q.7  
1 Sachin Tendulkar scored his 100<sup>th</sup> century at \_\_\_\_\_ stadium.

- Ans
- 1. Wankhede Stadium
  - 2. Lord's Cricket Grounds
  - 3. Eden Gardens
  - 4. Shere Bangla Cricket Stadium

Question ID : 98958011857  
Status : Answered  
Chosen Option : 1

Q.7  
2 \_\_\_\_\_ is referred to as the 'Father of Indian Civil Aviation'.

- Ans
- 1. Homi Bhabha
  - 2. Jehangir Ratanji Dadabhoy Tata
  - 3. Jamshedji Nusserwanji Tata
  - 4. Parvez Damania

Question ID : 98958011847  
Status : Answered  
Chosen Option : 2

Q.7  
3 The Wailing Wall is associated with:

- Ans
- 1. Bahais
  - 2. Jews
  - 3. Shias
  - 4. Catholics

Question ID : 98958011810  
Status : Answered  
Chosen Option : 2

Q.7  
4 What is the approximate playing time of the full version of the Indian National Anthem?

- Ans
- 1. 48 seconds
  - 2. 62 seconds
  - 3. 52 seconds
  - 4. 68 seconds

Question ID : 98958011850  
Status : Answered  
Chosen Option : 3

Q.7  
5 \_\_\_\_\_ created a new system of musicology called 'Indraprastha Mata' or 'Chaturdandi Sampradaya'.

- Ans
- 1. Bhimsen Joshi
  - 2. Amir Khusro
  - 3. Ustad Ghulam Ali
  - 4. Ali Azmat

Question ID : 98958011811  
Status : Not Answered  
Chosen Option : --

Q.7  
6 The minimum amount to be remitted through RTGS (Real Time Gross Settlement) is ₹ \_\_\_\_\_.

- Ans
- 1. 3,00,000
  - 2. 1,000
  - 3. 2,00,000
  - 4. 50,000

Question ID : 98958011814  
Status : Not Answered  
Chosen Option : --

Q.7  
7 'Paithani' is a form of \_\_\_\_\_ from Maharashtra.

- Ans
- 1. Dance
  - 2. Textile weaving
  - 3. Agriculture
  - 4. Classical music

Question ID : 98958011830  
Status : Not Answered  
Chosen Option : --

Q.7  
8 Mucosa, Submucosa, Muscularis and Adventitia are the four layers of the \_\_\_\_\_ wall.

- Ans
- 1. Stomach
  - 2. Throat
  - 3. Gastrointestinal
  - 4. Nasal

Question ID : 98958011826  
Status : Answered  
Chosen Option : 1

Q.7  
9 Periyar Wildlife Sanctuary is located in \_\_\_\_\_ state.

- Ans
- 1. Uttar Pradesh
  - 2. Kerala
  - 3. Madhya Pradesh
  - 4. Maharashtra

Question ID : 98958011831  
Status : Answered  
Chosen Option : 2

Q.8  
0 Chandrayaan-1, India's first mission to the Moon was launched from \_\_\_\_\_.

- Ans
- 1. Srikalahasti
  - 2. Srikakulam
  - 3. Sriharikota

4. Srisailam

Question ID : 98958011821  
Status : Answered  
Chosen Option : 3

Q.8  
1 \_\_\_\_\_ states that 'bad money drives good money out of circulation'.

- Ans
- 1. Gresham's Law
  - 2. Campbell's Law
  - 3. Engel's Law
  - 4. Baxter's Law

Question ID : 98958011816  
Status : Not Answered  
Chosen Option : --

Q.8  
2 \_\_\_\_\_ is the first Indian to win a Grand Prix in motorsport at the 2017 New Zealand Grand Prix.

- Ans
- 1. Narain Karthikeyan
  - 2. Jehan Daruvala
  - 3. Karun Chandhok
  - 4. Rajini Krishnan

Question ID : 98958011856  
Status : Not Answered  
Chosen Option : --

Q.8  
3 Svetambara and Digambara are two sects of the \_\_\_\_\_ community.

- Ans
- 1. Zoroastrian
  - 2. Buddhist
  - 3. Maratha
  - 4. Jain

Question ID : 98958011808  
Status : Answered  
Chosen Option : 4

Q.8  
4 Who is the author of Godaan?

- Ans
- 1. Harivanshrai Bachchan
  - 2. Munshi Premchand
  - 3. Shrilal Shukla
  - 4. Manmohan Shyam Joshi

Question ID : 98958011839  
Status : Answered  
Chosen Option : 2

Q.8  
5 \_\_\_\_\_ was Independent India's first individual Olympic medallist.

- Ans
- 1. Norman Pritchard
  - 2. Karnam Malleswari
  - 3. KD Jadhav
  - 4. Leander Paes

Question ID : 98958011855  
Status : Not Answered  
Chosen Option : --

Q.8  
6 As per the Constitution of India, Supreme Court Judges in India retire at the age of \_\_\_\_\_.

- Ans
- 1. 60
  - 2. 75
  - 3. 65
  - 4. 50

Question ID : 98958011853  
Status : Answered  
Chosen Option : 3

Q.8  
7 Researchers of Kerala-based Amrita University in collaboration with the Sikkim State Disaster Management Authority have developed a real-time \_\_\_\_\_. This system can help save lives and prevent loss to property by issuing advance alerts.

- Ans
- 1. Snow warning system
  - 2. Rain warning system
  - 3. Landslide warning system
  - 4. Earthquake warning system

Question ID : 98958011822  
Status : Not Answered  
Chosen Option : --

Q.8  
8 Which ex-Prime Minister of India is known as "Chanakya of Modern India"?

- Ans
- 1. IK Gujral
  - 2. VP Singh
  - 3. PV Narasimha Rao
  - 4. Charan Singh

Question ID : 98958011843  
Status : Answered  
Chosen Option : 2

Q.8  
9 Which one of the following is INCORRECTLY matched?

- Ans
- 1. Atharva-Veda – Knowledge of the magic formulas



2. Rig Veda – Knowledge of the Hymns of Praise
3. Yajur-Veda – Knowledge of the sacrificial formulas
4. Sama-Veda – Knowledge of Science

Question ID : 98958011809  
Status : Not Answered  
Chosen Option : --

Q.9 Who among the following has held all the three posts of Chief Economic Advisor to the Government of India, Governor of Reserve Bank of India and Head of Planning Commission in his bureaucratic career?

- Ans  1. Subramanian Swamy
2. P Chidambaram
3. Arun Jaitley
4. Manmohan Singh

Question ID : 98958011849  
Status : Answered  
Chosen Option : 4

Q.9 \_\_\_\_\_ is a global analytical company that provides ratings and research as well as risk and policy advisory services.

- Ans  1. ICSID
2. OPEC
3. IFC
4. CRISIL

Question ID : 98958011815  
Status : Not Answered  
Chosen Option : --

Q.9 Which of the following countries are India's neighbours?

- Ans  1. Pakistan, Sri Lanka, Nepal, Bangladesh
2. Pakistan, Singapore, Sri Lanka, Bhutan
3. Pakistan, Nepal, Indonesia
4. Pakistan, Australia, Russia

Question ID : 98958011835  
Status : Answered  
Chosen Option : 1

Q.9 Chhatrapati Shivaji and Soyarabai named their son \_\_\_\_\_.

- Ans  1. Narayan
2. Shahaji
3. Shambhaji

✓ 4. Rajaram

Question ID : 98958011840  
Status : Answered  
Chosen Option : 3

Q.9  
4 India's oldest operating refinery is at \_\_\_\_\_.

- Ans
- 1. Jamnagar
  - 2. Paradip
  - 3. Digboi
  - 4. Panipat

Question ID : 98958011833  
Status : Answered  
Chosen Option : 3

Q.9  
5 What is 'Roadeo'?

- Ans
- 1. A robot that helps maintain traffic
  - 2. A robot that fills potholes
  - 3. A robot that cleans city roads
  - 4. A robot that drives taxis

Question ID : 98958011819  
Status : Not Answered  
Chosen Option : --

Q.9  
6 \_\_\_\_\_ holds a major stake in Numaligarh Refinery Limited.

- Ans
- 1. Hindustan Petroleum
  - 2. Bharat Petroleum
  - 3. Chennai Petroleum
  - 4. Reliance Petrochemicals

Question ID : 98958011834  
Status : Not Answered  
Chosen Option : --

Q.9  
7 In January 2019, NASA's planet-hunting spacecraft TESS discovered a new planet three times the size of Earth. NASA named this planet \_\_\_\_\_.

- Ans
- 1. HD 31794b
  - 2. HD 41479b
  - 3. HD 21749b
  - 4. HD 15149b

Question ID : 98958011820  
Status : Not Answered

Chosen Option : --

Q.9  
8 Which of the following is NOT a crossing point along the Indo-Pak border?

- Ans
- 1. Attari
  - 2. Wagah
  - 3. Sikar
  - 4. Ganda Singh Wala

Question ID : 98958011832  
Status : Answered  
Chosen Option : 3

Q.9  
9 Ask Disha is \_\_\_\_\_.

- Ans
- 1. a navigation website
  - 2. a helpline set up by the Ministry of Road Transport and Highways
  - 3. a chatbot on the Indian Railways website
  - 4. a web mapping service that provides real-time traffic conditions

Question ID : 98958011825  
Status : Answered  
Chosen Option : 3

Q.1  
00 In September 2018, \_\_\_\_\_ signed a memorandum of understanding with India to share its expertise on Gaganyaan, ISRO's first manned space mission.

- Ans
- 1. Germany
  - 2. Italy
  - 3. Spain
  - 4. France

Question ID : 98958011828  
Status : Not Answered  
Chosen Option : --

Q.1  
01  $\frac{9}{40}$  converted to percentage is:

- Ans
- 1.  $2\frac{1}{2}$
  - 2. 2
  - 3. 22
  - 4.  $22\frac{1}{2}$

Question ID : 98958012169  
Status : Answered

Chosen Option : 4

Q.1 02 Four bells ring simultaneously at a certain instant. Thereafter they ring at intervals of 6, 8, 10 and 12 seconds respectively. In how many minutes will they ring together again for the first time?

- Ans
- 1. 2 minutes
  - 2.  $2\frac{1}{4}$  minutes
  - 3. 1 minute
  - 4.  $1\frac{1}{2}$  minutes

Question ID : 98958012161  
Status : Answered  
Chosen Option : 1

Q.1 03 The number 106974 is divisible by which of the single digit numbers:

- Ans
- 1. 2, 3, 6 and 7 only
  - 2. 2, 3 and 7 only
  - 3. 2, 3 and 4 only
  - 4. 2 and 3 only

Question ID : 98958012159  
Status : Answered  
Chosen Option : 1

Q.1 04 ABCD is a cyclic quadrilateral such that AB is a diameter of the circle circumscribing it and angle  $ADC = 148^\circ$ . Then angle BAC is equal to:

- Ans
- 1.  $60^\circ$
  - 2.  $58^\circ$
  - 3.  $40^\circ$
  - 4.  $150^\circ$

Question ID : 98958012191  
Status : Answered  
Chosen Option : 2

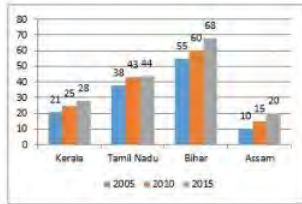
Q.1 05 The face value of the digit 6 in 16008 is:

- Ans
- 1. 6
  - 2. 600
  - 3. 6000
  - 4. 60

Question ID : 98958012164  
Status : Answered  
Chosen Option : 3

Q.1

06 The given bar chart shows population of 4 different states in 3 years (in crores).



In the given bar-chart, what is the ratio of increase in population in Bihar between 2005 and 2010 to that between 2010 and 2015?

- Ans
- 1. 3 : 7
  - 2. 7 : 3
  - 3. 5 : 8
  - 4. 8 : 5

Question ID : 98958012201

Status : Not Answered

Chosen Option : --

Q.1  
07  $\frac{\operatorname{cosec} 31^\circ}{\sec 59^\circ}$  is equal to:

- Ans
- 1. 1
  - 2. 3
  - 3. 0
  - 4. 2

Question ID : 98958012196

Status : Answered

Chosen Option : 1

Q.1  
08 A man covers the first 210 km of a journey at 60 km/h and the next 198 km at 66 km/h. The average speed for the whole journey is:

- Ans
- 1. 64 km/h
  - 2. 63 km/h
  - 3. 62.8 km/h
  - 4. 68.5 km/h

Question ID : 98958012165

Status : Not Answered

Chosen Option : --

Q.1  
09 Three pipes A, B and C can fill a cistern in 15, 24 and 36 minutes respectively. If pipe D can drain a full tank in 1 hour, how long will it take for the tank to be filled if all the four pipes are kept open together?

- Ans
- 1.  $9\frac{1}{8}$  hours
  - 2.  $5\frac{12}{25}$  hours
  - 3.  $7\frac{2}{3}$  hours



✓ 4.  $8\frac{16}{43}$  hours

Question ID : 98958012180  
Status : Not Answered  
Chosen Option : --

Q.1 From the top of a hill 96 m high, the angles of depression of two cars parked on the same side of the hill (at same level as the base of the hill) are  $30^\circ$  and  $60^\circ$  respectively. The distance between the cars is:

10

(use  $\sqrt{3}=1.73$  and round off to nearest whole number.)

- Ans
- 1. 165 m
  - 2. 111 m
  - 3. 220 m
  - 4. 243 m

Question ID : 98958012198  
Status : Not Answered  
Chosen Option : --

Q.1 The sum of three numbers is 777. The ratio between the first two numbers is 7 : 9 and the ratio between the second and third number is 3 : 7. The second number is:


11

- Ans
- 1. 252
  - 2. 63
  - 3. 189
  - 4. 147

Question ID : 98958012174  
Status : Answered  
Chosen Option : 3

Q.1 The given pie-chart shows the taxable income for A, B, C and D in lakhs of rupees.

12



This chart shows the tax paid for the above taxable income by A, B, C and D in lakhs of rupees.



In the given pie-chart, what is the percentage of tax charged for A?

- Ans
- 1. 30%
  - 2. 15%
  - 3. 40%
  - 4. 20%

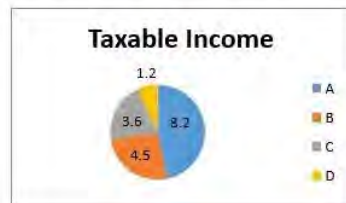
Question ID : 98958012202  
 Status : Not Answered  
 Chosen Option : --

Q.1 Two numbers are in the ratio 4 : 9. If both the numbers are increased by 12, the ratio becomes 11 : 21. The sum of the original numbers is:

- Ans
- 1. 128
  - 2. 64
  - 3. 52
  - 4. 104

Question ID : 98958012173  
 Status : Answered  
 Chosen Option : 4

Q.1 The given pie-chart shows the taxable income for A, B, C and D in lakhs of rupees.



This chart shows the tax paid for the above taxable income by A, B, C and D in in lakhs of rupees.



In the given pie-chart, if B's taxable income was 12% more, how much tax would he have paid then?

- Ans
- 1. 0.9
  - 2. 10.8
  - 3. 1.08
  - 4. 0.108

Question ID : 98958012203  
 Status : Not Answered  
 Chosen Option : --

Q.1 If  $(x - 6)^3 + (x - 4)^3 + (x - 5)^3 = (3x - 15)(x - 4)(x - 6)$ , then what is the value of  $x$ ?

- 15
- Ans
- 1. 3
  - 2. 7
  - 3. 18
  - 4. 5

Question ID : 98958012188

Status : Not Attempted and Marked For Review  
Chosen Option : --

Q.1 An 18 m deep well with diameter 7 m is dug and the earth from digging is spread evenly to form a platform 18 m \* 14 m.  
16 The height of the platform is:

- Ans
- 1. 2.6 m
  - 2. 3.05 m
  - 3. 2.75 m
  - 4. 3.2 m

Question ID : 98958012187  
Status : Answered  
Chosen Option : 3

Q.1 Two pipes A and B can fill a tank in 20 minutes and 30 minutes respectively. If only pipe B was kept open in the  
17 beginning for  $\frac{1}{5}$  th of the total time and then, both pipe A and B were kept open for the remaining time. How many minutes did it take the pipes to fill the tank?

- Ans
- 1.  $13\frac{5}{23}$
  - 2.  $16\frac{5}{23}$
  - 3.  $16\frac{1}{23}$
  - 4.  $13\frac{1}{23}$

Question ID : 98958012179  
Status : Not Answered  
Chosen Option : --

Q.1 If the area of a regular hexagon is  $108\sqrt{3}$  cm<sup>2</sup>, its perimeter is:  
18

- Ans
- 1. 24 cm
  - 2.  $36\sqrt{2}$  cm
  - 3.  $28\sqrt{3}$  cm
  - 4.  $42\sqrt{3}$  cm

Question ID : 98958012183  
Status : Not Answered  
Chosen Option : --

Q.1 A bucket is drawn from a well by means of a rope which is wound around a wheel of radius 48 cm. If the bucket  
19 ascends in 1 minute 12 seconds at a speed of 1.2 m/sec, find the length of the rope.

- Ans
- 1. 8.64 cm
  - 2. 86.4 cm
  - 3. 864 cm
  - 4. 8640 cm

Question ID : 98958012181  
Status : Not Answered

Chosen Option : --

Q.1 A paper in the form of a rectangle is cut diagonally to form two triangles. If the diagonal measures  $4\sqrt{5}$  cm and the length is twice the breadth, the area of the rectangle is:

- Ans
- 1.  $54 \text{ cm}^2$
  - 2.  $32 \text{ cm}^2$
  - 3.  $72 \text{ cm}^2$
  - 4.  $80 \text{ cm}^2$

Question ID : 98958012184

Status : Answered

Chosen Option : 2

Q.1 If  $x + \frac{1}{x} = 3\sqrt{2}$ , then  $x^2 + \frac{1}{x^2}$  is equal to:

- Ans
- 1. 22
  - 2. 16
  - 3. 26
  - 4. 14

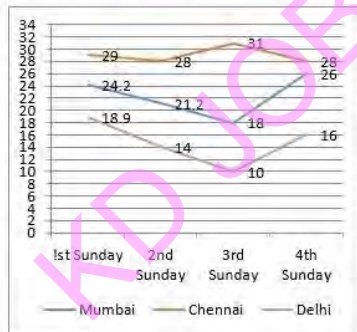
Question ID : 98958012189

Status : Answered

Chosen Option : 2

Q.1 The line graph shows the temperature on four Sundays of three cities.

22



In the given line graph, what was the average temperature on the 1<sup>st</sup> Sunday in all the three cities? (rounded to first decimal)

- Ans
- 1. 21.2
  - 2. 25.4
  - 3. 23
  - 4. 24

Question ID : 98958012206

Status : Answered

Chosen Option : 4

Q.1 A dealer allows a discount of 12% on the marked price. If the selling price is ₹924, the discount is:

23

Ans

- ✓ 1. ₹126  
 ✗ 2. ₹110.90  
 ✗ 3. ₹114  
 ✗ 4. ₹119.20

Question ID : 98958012167  
 Status : Not Answered  
 Chosen Option : --

Q.1 What is the angle of elevation of the sun from the top of a vertical pole when its height is equal to the length of its shadow?  
 24

- Ans ✗ 1.  $90^\circ$   
 ✗ 2.  $60^\circ$   
 ✓ 3.  $45^\circ$   
 ✗ 4.  $30^\circ$

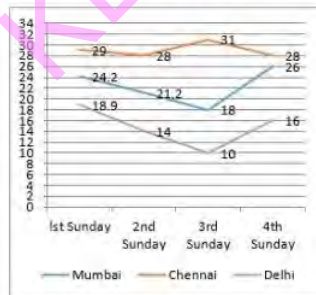
Question ID : 98958012197  
 Status : Answered  
 Chosen Option : 3

Q.1 PA and PB are two tangents to a circle with centre O, from a point P outside the circle. A and B are points on the circle.  
 25 If  $\angle APB = 100^\circ$ , then  $\angle OAB$  is equal to:

- Ans ✗ 1.  $25^\circ$   
 ✗ 2.  $20^\circ$   
 ✗ 3.  $35^\circ$   
 ✓ 4.  $50^\circ$

Question ID : 98958012192  
 Status : Answered  
 Chosen Option : 4

Q.1 The line graph shows the temperature on four Sundays of three cities.  
 26



In the given line graph, what was the difference in temperature between Delhi and Chennai on the 3<sup>rd</sup> Sunday?

- Ans ✓ 1. 21  
 ✗ 2. 8  
 ✗ 3. 17  
 ✗ 4. 13

Question ID : 98958012207  
 Status : Answered



Chosen Option : 1

Q.1 Find the compound interest at the rate of 7% p.a compounded annually for two years on the principal that yields a simple interest of ₹9450 for 3 years at 7% p.a.

- Ans
- 1. ₹12,678.40
  - 2. ₹6,520.50
  - 3. ₹12,345.20
  - 4. ₹10,127

Question ID : 98958012175  
Status : Not Answered  
Chosen Option : --

Q.1 What is 34% of 1.2 km?

- Ans
- 1. 4,080 cm
  - 2. 4,08,000 cm
  - 3. 408 cm
  - 4. 40,800 cm

Question ID : 98958012170  
Status : Answered  
Chosen Option : 4

Q.1 The selling price of an article is ₹2,28,528. A shopkeeper marks its price 15% above its cost price and gives a discount of 10%. The cost price is:

- Ans
- 1. ₹2,20,800
  - 2. ₹2,58,740
  - 3. ₹2,87,390
  - 4. ₹2,18,650

Question ID : 98958012168  
Status : Not Answered  
Chosen Option : --

Q.1 A can do  $\frac{1}{5}$ th of a work in 4 days and B can do  $\frac{1}{6}$ th of the same work in 5 days. In how many days they can finish the work, if they work together?

- Ans
- 1. 12
  - 2. 20
  - 3. 15
  - 4. 30

Question ID : 98958012178  
Status : Not Answered  
Chosen Option : --

Q.1 The compound interest calculated yearly on a certain sum of money for the second year is ₹1,320 and for the third year is ₹1,452. The principal amount at the start of the first year is:

Ans

1. ₹13,200
2. ₹12,970
3. ₹12,650
4. ₹12,000

Question ID : 98958012176  
Status : Not Answered  
Chosen Option : --

Q.1 The greatest number of 5 digits that is exactly divisible by each of 8, 12, 15 and 20 is:

- Ans  1. 99950
2. 99940
3. 99980
4. 99960

Question ID : 98958012160  
Status : Not Answered  
Chosen Option : --

Q.1  $13 \div \{4 \text{ of } 2 - 3 + 4 \times (6 - 4)\}$  is equal to:

- Ans  1.  $-2\frac{1}{13}$
2. 1
3. 0
4. 1.3

Question ID : 98958012163  
Status : Answered  
Chosen Option : 4

Q.1 The given pie-chart shows the taxable income for A, B, C and D in lakhs of rupees.



This chart shows the tax paid for the above taxable income by A, B, C and D in in lakhs of rupees.



In the given pie-chart, what is the overall tax percentage for all four?

- Ans  1. 17.2%
2. 15%

3. 21.3%

4. 19.5%

Question ID : 98958012204  
Status : Not Answered  
Chosen Option : --

Q.1  
35 If  $a^3 - b^3 = 216$  and  $a - b = 6$ , then  $(a + b)^2 - ab$  is equal to:

Ans  1. 42

2. 36

3. 38

4. 52

Question ID : 98958012190  
Status : Answered  
Chosen Option : 2

Q.1  
36 The average weight of six children is 32.8 kg. If two more children weighing 26.5 kg and 28.3 kg are added to the group, what would be the new average weight in kilograms?

Ans  1. 31.45

2. 30.3

3. 29.2

4. 28.9

Question ID : 98958012166  
Status : Answered  
Chosen Option : 1

Q.1  
37 A and B can finish a work together in  $3\frac{2}{3}$  days, C and D can finish the same work in  $3\frac{1}{7}$  days. If A, B, C and D do the work together, how long will it take for them to finish half of the work?

Ans  1.  $1\frac{1}{13}$  days

2.  $\frac{8}{13}$  day

3.  $\frac{2}{13}$  day

4.  $\frac{11}{13}$  day

Question ID : 98958012177  
Status : Not Answered  
Chosen Option : --

Q.1  
38 The area of a right angled triangle having base 24 cm and hypotenuse 25 cm is:

Ans  1.  $92 \text{ cm}^2$

2.  $72 \text{ cm}^2$

3.  $108 \text{ cm}^2$

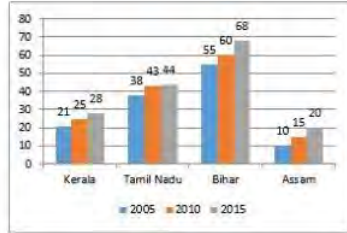
✓ 4.  $84 \text{ cm}^2$

Question ID : 98958012193

Status : Answered

Chosen Option : 4

Q.1 The given bar chart shows population of 4 different states in 3 years (in crores).  
39



In the given bar-chart, which state has had the maximum population growth in 2015 compared to 2005.

- Ans ✓ 1. Assam  
 ✗ 2. Tamil Nadu  
 ✗ 3. Bihar  
 ✗ 4. Kerala

Question ID : 98958012199

Status : Answered

Chosen Option : 3

Q.1 A 230 m long train has to cross a platform of length 750 m. If the train is running at a speed of 72 km/h,  
40 the time taken is:

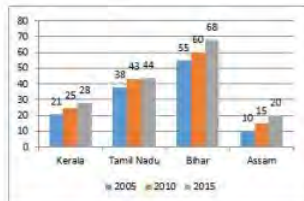
- Ans ✓ 1. 49 seconds  
 ✗ 2. 58 seconds  
 ✗ 3. 64 seconds  
 ✗ 4. 72 seconds

Question ID : 98958012182

Status : Answered

Chosen Option : 1

Q.1 The given bar chart shows population of 4 different states in 3 years (in crores).  
41



In the given bar-chart, what is the population growth (in crores) in total in states Kerala and Tamil Nadu for the period between 2005 and 2015?

- Ans ✓ 1. 13  
 ✗ 2. 9  
 ✗ 3. 10  
 ✗ 4. 11

Question ID : 98958012200  
Status : Answered  
Chosen Option : 1

Q.1 The ratio between a base angle and a vertical angle of an isosceles triangle (base angles being equal) is 2 : 5. The vertical angle is:

- Ans
- 1.  $140^\circ$
  - 2.  $40^\circ$
  - 3.  $100^\circ$
  - 4.  $80^\circ$

Question ID : 98958012194  
Status : Answered  
Chosen Option : 3

Q.1 The length of the longest pole that can be placed in a room 16 m long, 8 m wide and 11 m high is:

- Ans
- 1. 20 m
  - 2. 21 m
  - 3. 19 m
  - 4. 18 m

Question ID : 98958012185  
Status : Answered  
Chosen Option : 2

Q.1 If the selling price of an article is  $1\frac{2}{5}$  of its cost price, the percentage gain is:

- Ans
- 1. 47
  - 2. 40
  - 3. 20
  - 4. 25

Question ID : 98958012172  
Status : Answered  
Chosen Option : 2

Q.1 The smallest number that should be added to 8212 to obtain a perfect square is:

- Ans
- 1. 123
  - 2. 69
  - 3. 54
  - 4. 112

Question ID : 98958012158  
Status : Answered  
Chosen Option : 2

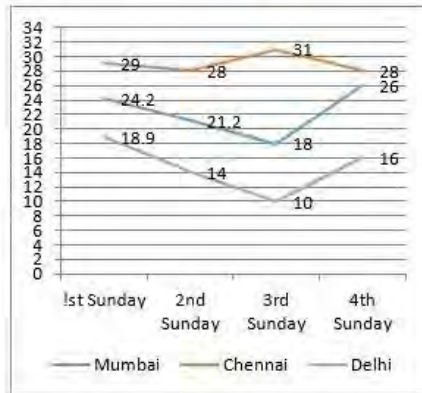
Q.1 Salary of A increased by 8% in the year 2015 as compared to 2014 and decreased by 6% in the year 2016 as compared to 2015. If his salary was ₹2,34,778 in 2016, his salary (round off to nearest whole number) in 2014 was:



- Ans  1. ₹2,31,263  
 2. ₹2,34,987  
 3. ₹2,38,347  
 4. ₹2,36,402

Question ID : 98958012171  
 Status : Not Answered  
 Chosen Option : --

Q.1 The line graph shows the temperature on four Sundays of three cities.  
 47



In the given line graph, when was the maximum temperature recorded in Chennai?

- Ans  1. 4<sup>th</sup> Sunday  
 2. 1<sup>st</sup> Sunday  
 3. 3<sup>rd</sup> Sunday  
 4. 2<sup>nd</sup> Sunday

Question ID : 98958012205  
 Status : Not Answered  
 Chosen Option : --

Q.1  
 48  $1 + \frac{\tan^2 A}{1 + \sec A}$  is equal to:

- Ans  1. sec A  
 2. cosec A  
 3. cos A  
 4. sin A

Question ID : 98958012195  
 Status : Not Answered  
 Chosen Option : --

Q.1 A square piece of cardboard with side 12 cm has a small square of 2 cm cut out from each of the corners. The resulting  
 49 flaps are turned up to make a box 2 cm deep. The volume of the box is:

- Ans  1. 94 cm<sup>3</sup>

2.  $102 \text{ cm}^3$
3.  $128 \text{ cm}^3$
4.  $112 \text{ cm}^3$

Question ID : 98958012186  
 Status : Not Answered  
 Chosen Option : --

Q.1  
50  $10 - \{17 - 12 + (5 + 9 \times 2 - 17)\}$  is equal to:

- Ans  1. -5
2. 7
3. 5
4. -7

Question ID : 98958012162  
 Status : Not Answered  
 Chosen Option : --

Q.1  
51 Select the most appropriate meaning of the given idiom.

A wolf in sheep's clothing

- Ans  1. A celebrity dressed as a commoner
2. A scholar learning how to act as the fool
3. A dangerous person pretending to be harmless
4. A cunning man in a leather coat

Question ID : 98958011535  
 Status : Answered  
 Chosen Option : 3

Q.1  
52 Select the most appropriate option to substitute the underlined segment in the given sentence. If there is no need to substitute it, select No Improvement.

Amnesty International had a reputation of being a hard place to work so the word 'toxic' was used to describe the Amnesty work culture so far back as the 1990s.

- Ans  1. No Improvement.
2. as far back the 1990s
3. so far back as the 1990
4. as far back as the 1990s

Question ID : 98958011505  
 Status : Answered  
 Chosen Option : 4

Q.1  
53 Select the wrongly spelt word

- Ans  1. concurrently

- 2. completely
- 3. cautiously
- 4. consequently

Question ID : 98958011545  
Status : Answered  
Chosen Option : 4

Q.1  
54 Select the word, which means the same as the group of words given.

A transport vehicle for conveying the coffin at a funeral

- Ans
- 1. ambulance
  - 2. van
  - 3. hearse
  - 4. bier

Question ID : 98958011546  
Status : Answered  
Chosen Option : 3

Q.1  
55 Select the word, which means the same as the group of words given.

a person who knows a lot about and enjoys one of the arts, or food, drink, etc.

- Ans
- 1. admirer
  - 2. connoisseur
  - 3. ascetic
  - 4. aristocrat

Question ID : 98958011536  
Status : Answered  
Chosen Option : 2

Q.1  
56 Select the word, which means the same as the group of words given.

a person who is one of the first to do something

- Ans
- 1. creator
  - 2. maker
  - 3. pioneer
  - 4. manufacturer

Question ID : 98958011538  
Status : Answered  
Chosen Option : 3

Q.1  
57

Select the most appropriate meaning of the given idiom.

Flash in the pan

- Ans
- 1. Gold discovered only once during panning
  - 2. An early promise that fails to materialize
  - 3. Something that offers hope, like a light in a tunnel
  - 4. Sudden discovery or a surprise element

Question ID : 98958011531  
Status : Not Answered  
Chosen Option : --

Q.1 Identify the segment in the sentence, which contains the grammatical error.

58

This camping site is a naturally sculpted amphitheater that serving as the perfect spot to lay back and count the stars.

- Ans
- 1. a naturally sculpted amphitheater
  - 2. that serving as the perfect spot
  - 3. to lay back and count the stars.
  - 4. This camping site is

Question ID : 98958011503  
Status : Answered  
Chosen Option : 2

Q.1 Identify the segment in the sentence, which contains the grammatical error.

59

A newly released study has found that more people were injuring riding electric scooters than by riding bicycles.

- Ans
- 1. A newly released study has found
  - 2. injuring riding electric scooters
  - 3. than by riding bicycles
  - 4. that more people

Question ID : 98958011501  
Status : Answered  
Chosen Option : 2

Q.1 Select the synonym of the given word.

60

INFUSE

- Ans
- 1. enrich
  - 2. apply
  - 3. fill
  - 4. feel

Question ID : 98958011521  
Status : Answered

Chosen Option : 3

Q.1 Select the wrongly spelt word

61

- Ans
- 1. exetension
  - 2. executive
  - 3. excursion
  - 4. execution

Question ID : 98958011543

Status : Answered

Chosen Option : 1

Q.1 Select the synonym of the given word.

62

PERSUADE

- Ans
- 1. argue
  - 2. convince
  - 3. dissuade
  - 4. mislead

Question ID : 98958011524

Status : Answered

Chosen Option : 2

Q.1 Select the most appropriate word to fill in the blanks.

63

Scientists have identified \_\_\_\_\_ regions that make people \_\_\_\_\_ tasks rather than tackling them immediately.

- Ans
- 1. head; differ
  - 2. face; postpone
  - 3. mind; prepone
  - 4. brain; defer

Question ID : 98958011511

Status : Answered

Chosen Option : 4

Q.1 Select the most appropriate word to fill in the blanks.

64

War photographers use black and white pictures as a \_\_\_\_\_ because they will shout and scream at you. You won't \_\_\_\_\_ the black and white, but you could walk past a colour picture.

- Ans
- 1. strategy; consider
  - 2. weapon; like
  - 3. weapon; miss
  - 4. speaker; ignore

Question ID : 98958011513

Status : Answered

Chosen Option : 4



Q.1  
65 Select the synonym of the given word.

HARDSHIP

- Ans
- 1. mystery
  - 2. misery
  - 3. difficult
  - 4. privacy

Question ID : 98958011522

Status : Answered

Chosen Option : 3

Comprehension:

KD JOB UPDATES

Read the following passage and answer the questions given after it.

We are all born milk drinkers. Babies' guts produce the enzyme lactase, which breaks down lactose, the sugar in cow's milk, into the simpler sugars -- glucose and galactose. But for the majority of humans, production of the enzyme lactase plummets after weaning.

"From a human perspective -- no, to go further than that, from a mammalian perspective -- the norm is to be able to tolerate your mother's breast milk, and then as you get past infancy, to stop producing lactase and become lactose intolerant," said Adam Fox, a consultant paediatric allergist at Guy's and St Thomas's hospitals, and one of the UK's leading food allergy experts. "Then you've got a small group of humans that have a mutation which means they maintain production of lactase into adulthood. Northern Europeans, the Masai [in east Africa], some Arab groups as well. But that's the exception, not the rule."

That schism between milk-drinkers and the rest -- actually a series of independent genetic mutations -- appears to have occurred about 10,000 years ago, around the time humans were domesticating farm animals. It is the reason that in countries such as the UK, Sweden and Ireland, more than 90% of adults can drink milk without suffering any ill effects, but worldwide, more than two-thirds of all adults are considered lactose intolerant. For lactose-intolerant people, a glass of milk can induce bloating, stomach pains and diarrhoea. (Lactose intolerance should not be -- though often is -- confused with cow's milk allergy, an immune response to the proteins in cow's milk that affects around 1% of UK adults.)

Even in northern Europe, milk as we know it is a recent phenomenon. Fresh milk, left unrefrigerated, spoils quickly and can harbor a variety of deadly pathogens, including E Coli and tuberculosis. For most of history milk was either consumed within moments of milking or processed as cheese or yoghurt. Few drank milk in its liquid form. "The Romans considered it a sign of barbarism," said Mark Kurlansky, author of *Milk! A 10,000-Year Food Fracas*. "The only people who drank milk were people on farms, because they were the only ones who could get it fresh enough." Even then, cow's milk was considered inferior to alternatives such as goat or donkey. In the 19th century, "swill milk" -- so called because cows were fed the filthy runoff from inner-city breweries, turning their milk blue -- was linked with thousands of infant deaths. Only in the early 20th century, with the introduction of mandatory pasteurization -- in which milk is heated to kill off any bacteria before bottling -- did milk become safe enough for most people to drink regularly.)

SubQuestion No : 166

- Q.1  
66 The author points out that in the 19th century, swill milk was linked with thousands of infant deaths. Which ONE of the actions below would have, if familiar, available and practicable for the people of that time, saved these children?

- Ans
- 1. Feeding the cows uncontaminated healthy food
  - 2. Freezing the milk to remove the pollutants



3. Treating lactose intolerance with medicines

4. Shutting down inner city breweries

Question ID : 98958011547

Status : Answered

Chosen Option : 1

Comprehension:

Read the following passage and answer the questions given after it.

We are all born milk drinkers. Babies' guts produce the enzyme lactase, which breaks down lactose, the sugar in cow's milk, into the simpler sugars -- glucose and galactose. But for the majority of humans, production of the enzyme lactase plummets after weaning.

"From a human perspective -- no, to go further than that, from a mammalian perspective -- the norm is to be able to tolerate your mother's breast milk, and then as you get past infancy, to stop producing lactase and become lactose intolerant," said Adam Fox, a consultant paediatric allergist at Guy's and St Thomas's hospitals, and one of the UK's leading food allergy experts. "Then you've got a small group of humans that have a mutation which means they maintain production of lactase into adulthood. Northern Europeans, the Masai [in east Africa], some Arab groups as well. But that's the exception, not the rule."

That schism between milk-drinkers and the rest -- actually a series of independent genetic mutations -- appears to have occurred about 10,000 years ago, around the time humans were domesticating farm animals. It is the reason that in countries such as the UK, Sweden and Ireland, more than 90% of adults can drink milk without suffering any ill effects, but worldwide, more than two-thirds of all adults are considered lactose intolerant. For lactose-intolerant people, a glass of milk can induce bloating, stomach pains and diarrhoea. (Lactose intolerance should not be -- though often is -- confused with cow's milk allergy, an immune response to the proteins in cow's milk that affects around 1% of UK adults.)

Even in northern Europe, milk as we know it is a recent phenomenon. Fresh milk, left unrefrigerated, spoils quickly and can harbor a variety of deadly pathogens, including E Coli and tuberculosis. For most of history milk was either consumed within moments of milking or processed as cheese or yoghurt. Few drank milk in its liquid form. "The Romans considered it a sign of barbarism," said Mark Kurlansky, author of *Milk! A 10,000-Year Food Fracas*. "The only people who drank milk were people on farms, because they were the only ones who could get it fresh enough." Even then, cow's milk was considered inferior to alternatives such as goat or donkey. In the 19th century, "swill milk" -- so called because cows were fed the filthy runoff from inner-city breweries, turning their milk blue -- was linked with thousands of infant deaths. Only in the early 20th century, with the introduction of mandatory pasteurization -- in which milk is heated to kill off any bacteria before bottling -- did milk become safe enough for most people to drink regularly.)

SubQuestion No : 167

Q.1 'Lactose intolerance' is \_\_\_\_\_.

67

Ans

- 1. absence of the enzyme lactase in the gut, creating intolerance for milk
- 2. a human body not being able to accept cow's milk allergy
- 3. linked to discovery and propagation of plant milk
- 4. experience and suffering problems in the digestive system

Question ID : 98958011548

Status : Answered

Chosen Option : 1

Comprehension:

KD JOB UPDATES



Read the following passage and answer the questions given after it.

We are all born milk drinkers. Babies' guts produce the enzyme lactase, which breaks down lactose, the sugar in cow's milk, into the simpler sugars -- glucose and galactose. But for the majority of humans, production of the enzyme lactase plummets after weaning.

"From a human perspective -- no, to go further than that, from a mammalian perspective -- the norm is to be able to tolerate your mother's breast milk, and then as you get past infancy, to stop producing lactase and become lactose intolerant," said Adam Fox, a consultant paediatric allergist at Guy's and St Thomas's hospitals, and one of the UK's leading food allergy experts. "Then you've got a small group of humans that have a mutation which means they maintain production of lactase into adulthood. Northern Europeans, the Masai [in east Africa], some Arab groups as well. But that's the exception, not the rule."

That schism between milk-drinkers and the rest -- actually a series of independent genetic mutations -- appears to have occurred about 10,000 years ago, around the time humans were domesticating farm animals. It is the reason that in countries such as the UK, Sweden and Ireland, more than 90% of adults can drink milk without suffering any ill effects, but worldwide, more than two-thirds of all adults are considered lactose intolerant. For lactose-intolerant people, a glass of milk can induce bloating, stomach pains and diarrhoea. (Lactose intolerance should not be -- though often is -- confused with cow's milk allergy, an immune response to the proteins in cow's milk that affects around 1% of UK adults.)


Even in northern Europe, milk as we know it is a recent phenomenon. Fresh milk, left unrefrigerated, spoils quickly and can harbor a variety of deadly pathogens, including E Coli and tuberculosis. For most of history milk was either consumed within moments of milking or processed as cheese or yoghurt. Few drank milk in its liquid form. "The Romans considered it a sign of barbarism," said Mark Kurlansky, author of *Milk! A 10,000-Year Food Fracas*. "The only people who drank milk were people on farms, because they were the only ones who could get it fresh enough." Even then, cow's milk was considered inferior to alternatives such as goat or donkey. In the 19th century, "swill milk" -- so called because cows were fed the filthy runoff from inner-city breweries, turning their milk blue -- was linked with thousands of infant deaths. Only in the early 20th century, with the introduction of mandatory pasteurization -- in which milk is heated to kill off any bacteria before bottling -- did milk become safe enough for most people to drink regularly.)

SubQuestion No : 168

Q.1  
68 Most adults in India continue to have milk without suffering any of the issues outlined in the passage because \_\_\_\_\_.

- Ans
- 1. they continue to live in farms and get fresh milk
  - 2. they maintain production of lactase into adulthood
  - 3. they have no other source of nutrients to nourish them



 4. genetic mutation has helped reduce lactase production

Question ID : 98958011549

Status : Answered

Chosen Option : 2

Comprehension:

Read the following passage and answer the questions given after it.

We are all born milk drinkers. Babies' guts produce the enzyme lactase, which breaks down lactose, the sugar in cow's milk, into the simpler sugars -- glucose and galactose. But for the majority of humans, production of the enzyme lactase plummets after weaning.

"From a human perspective -- no, to go further than that, from a mammalian perspective -- the norm is to be able to tolerate your mother's breast milk, and then as you get past infancy, to stop producing lactase and become lactose intolerant," said Adam Fox, a consultant paediatric allergist at Guy's and St Thomas's hospitals, and one of the UK's leading food allergy experts. "Then you've got a small group of humans that have a mutation which means they maintain production of lactase into adulthood. Northern Europeans, the Masai [in east Africa], some Arab groups as well. But that's the exception, not the rule."

That schism between milk-drinkers and the rest -- actually a series of independent genetic mutations -- appears to have occurred about 10,000 years ago, around the time humans were domesticating farm animals. It is the reason that in countries such as the UK, Sweden and Ireland, more than 90% of adults can drink milk without suffering any ill effects, but worldwide, more than two-thirds of all adults are considered lactose intolerant. For lactose-intolerant people, a glass of milk can induce bloating, stomach pains and diarrhoea. (Lactose intolerance should not be -- though often is -- confused with cow's milk allergy, an immune response to the proteins in cow's milk that affects around 1% of UK adults.)

Even in northern Europe, milk as we know it is a recent phenomenon. Fresh milk, left unrefrigerated, spoils quickly and can harbor a variety of deadly pathogens, including E Coli and tuberculosis. For most of history milk was either consumed within moments of milking or processed as cheese or yoghurt. Few drank milk in its liquid form. "The Romans considered it a sign of barbarism," said Mark Kurlansky, author of *Milk! A 10,000-Year Food Fracas*. "The only people who drank milk were people on farms, because they were the only ones who could get it fresh enough." Even then, cow's milk was considered inferior to alternatives such as goat or donkey. In the 19th century, "swill milk" -- so called because cows were fed the filthy runoff from inner-city breweries, turning their milk blue -- was linked with thousands of infant deaths. Only in the early 20th century, with the introduction of mandatory pasteurization -- in which milk is heated to kill off any bacteria before bottling -- did milk become safe enough for most people to drink regularly.)

SubQuestion No : 169

Q.1  
69

“More than 90% of adults in countries such as the UK, Sweden and Ireland can drink milk without suffering any ill effects” because \_\_\_\_\_.

Ans

- 1. they have a history of domesticating farm animals
- 2. they always had pasteurized milk and avoided fresh milk
- 3. these countries were farmland before they became sophisticated cities
- 4. they have a lot of dairy products such as cheese and yoghurt

Question ID : 98958011550

Status : Answered

Chosen Option : 1

Comprehension:

KD JOB UPDATES



Read the following passage and answer the questions given after it.

We are all born milk drinkers. Babies' guts produce the enzyme lactase, which breaks down lactose, the sugar in cow's milk, into the simpler sugars -- glucose and galactose. But for the majority of humans, production of the enzyme lactase plummets after weaning.

"From a human perspective -- no, to go further than that, from a mammalian perspective -- the norm is to be able to tolerate your mother's breast milk, and then as you get past infancy, to stop producing lactase and become lactose intolerant," said Adam Fox, a consultant paediatric allergist at Guy's and St Thomas's hospitals, and one of the UK's leading food allergy experts. "Then you've got a small group of humans that have a mutation which means they maintain production of lactase into adulthood. Northern Europeans, the Masai [in east Africa], some Arab groups as well. But that's the exception, not the rule."

That schism between milk-drinkers and the rest -- actually a series of independent genetic mutations -- appears to have occurred about 10,000 years ago, around the time humans were domesticating farm animals. It is the reason that in countries such as the UK, Sweden and Ireland, more than 90% of adults can drink milk without suffering any ill effects, but worldwide, more than two-thirds of all adults are considered lactose intolerant. For lactose-intolerant people, a glass of milk can induce bloating, stomach pains and diarrhoea. (Lactose intolerance should not be -- though often is -- confused with cow's milk allergy, an immune response to the proteins in cow's milk that affects around 1% of UK adults.)

Even in northern Europe, milk as we know it is a recent phenomenon. Fresh milk, left unrefrigerated, spoils quickly and can harbor a variety of deadly pathogens, including E Coli and tuberculosis. For most of history milk was either consumed within moments of milking or processed as cheese or yoghurt. Few drank milk in its liquid form. "The Romans considered it a sign of barbarism," said Mark Kurlansky, author of *Milk! A 10,000-Year Food Fracas*. "The only people who drank milk were people on farms, because they were the only ones who could get it fresh enough." Even then, cow's milk was considered inferior to alternatives such as goat or donkey. In the 19th century, "swill milk" -- so called because cows were fed the filthy runoff from inner-city breweries, turning their milk blue -- was linked with thousands of infant deaths. Only in the early 20th century, with the introduction of mandatory pasteurization -- in which milk is heated to kill off any bacteria before bottling -- did milk become safe enough for most people to drink regularly.)

SubQuestion No : 170

Q.1 What is this passage about?

70

- Ans
- 1. Weaning and the plummeting enzyme lactase
  - 2. Why some adults develop milk intolerance
  - 3. How pasteurized milk cured lactose intolerance
  - 4. Milk and lactose intolerance

Question ID : 98958011551

Status : Answered  
Chosen Option : 4

Q.1  
71 Select the antonym of the given word.

SUNDER

- Ans
- 1. asunder
  - 2. surrender
  - 3. arrest
  - 4. combine

Question ID : 98958011529  
Status : Not Answered  
Chosen Option : --

Q.1  
72 Select the wrongly spelt word

- Ans
- 1. negation
  - 2. negativity
  - 3. navigation
  - 4. negotaition

Question ID : 98958011542  
Status : Answered  
Chosen Option : 4

Comprehension:

In the following passage some words have been deleted. Fill in the blanks with the help of the alternatives given. Select the most appropriate option for each number.

It was a crime of passion of such disfiguring violence that Victorian London was \_\_\_\_\_ (1) scandalized. In November 1865, Felix Deacon, a young lithographer who had \_\_\_\_\_ (2) for a married woman, Sarah Ann Peacock, was attacked \_\_\_\_\_ (3) the street. His assailant was not her husband but another man, a dentist who was equally \_\_\_\_\_ (4) with Mrs. Peacock and therefore saw Deacon as a \_\_\_\_\_ (5).

SubQuestion No : 173

Q.1  
73 Select the most appropriate option to fill in blank  
No.1.

- Ans
- 1. has left
  - 2. left
  - 3. was left
  - 4. is left

Question ID : 98958011516  
Status : Answered

Chosen Option : 2

Comprehension:

In the following passage some words have been deleted. Fill in the blanks with the help of the alternatives given. Select the most appropriate option for each number.

It was a crime of passion of such disfiguring violence that Victorian London was \_\_\_\_\_ (1) scandalized. In November 1865, Felix Deacon, a young lithographer who had \_\_\_\_\_ (2) for a married woman, Sarah Ann Peacock, was attacked \_\_\_\_\_ (3) the street. His assailant was not her husband but another man, a dentist who was equally \_\_\_\_\_ (4) with Mrs. Peacock and therefore saw Deacon as a \_\_\_\_\_ (5).

SubQuestion No : 174

Q.1  
74 Select the most appropriate option to fill in blank

No.2.

- Ans
- 1. come
  - 2. tripped
  - 3. fallen
  - 4. cared

Question ID : 98958011517

Status : Answered

Chosen Option : 3

Comprehension:

In the following passage some words have been deleted. Fill in the blanks with the help of the alternatives given. Select the most appropriate option for each number.

It was a crime of passion of such disfiguring violence that Victorian London was \_\_\_\_\_ (1) scandalized. In November 1865, Felix Deacon, a young lithographer who had \_\_\_\_\_ (2) for a married woman, Sarah Ann Peacock, was attacked \_\_\_\_\_ (3) the street. His assailant was not her husband but another man, a dentist who was equally \_\_\_\_\_ (4) with Mrs. Peacock and therefore saw Deacon as a \_\_\_\_\_ (5).

SubQuestion No : 175

Q.1  
75 Select the most appropriate option to fill in blank

No.3.

- Ans
- 1. into
  - 2. through
  - 3. in
  - 4. at

Question ID : 98958011518

Status : Answered

Chosen Option : 3



Comprehension:

In the following passage some words have been deleted. Fill in the blanks with the help of the alternatives given. Select the most appropriate option for each number.

It was a crime of passion of such disfiguring violence that Victorian London was \_\_\_\_\_ (1) scandalized. In November 1865, Felix Deacon, a young lithographer who had \_\_\_\_\_ (2) for a married woman, Sarah Ann Peacock, was attacked \_\_\_\_\_ (3) the street. His assailant was not her husband but another man, a dentist who was equally \_\_\_\_\_ (4) with Mrs. Peacock and therefore saw Deacon as a \_\_\_\_\_ (5).

SubQuestion No : 176

Q.1 Select the most appropriate option to fill in blank

76

No.4.

- Ans
- 1. working
  - 2. smitten
  - 3. bent
  - 4. hurt

Question ID : 98958011519

Status : Answered

Chosen Option : 3

Comprehension:

In the following passage some words have been deleted. Fill in the blanks with the help of the alternatives given. Select the most appropriate option for each number.

It was a crime of passion of such disfiguring violence that Victorian London was \_\_\_\_\_ (1) scandalized. In November 1865, Felix Deacon, a young lithographer who had \_\_\_\_\_ (2) for a married woman, Sarah Ann Peacock, was attacked \_\_\_\_\_ (3) the street. His assailant was not her husband but another man, a dentist who was equally \_\_\_\_\_ (4) with Mrs. Peacock and therefore saw Deacon as a \_\_\_\_\_ (5).

SubQuestion No : 177

Q.1 Select the most appropriate option to fill in blank

77

No.5.

- Ans
- 1. opponent
  - 2. friend
  - 3. mediator
  - 4. rival

Question ID : 98958011520

Status : Answered

Chosen Option : 4

Q.1

78

Select the most appropriate option to substitute the underlined segment in the given sentence. If there is no need to substitute it, select No Improvement.

While there is still a debate about why depression, anxiety and suicide have skyrocketed among people, today, ubiquitous smartphone use plays surely a part.

- Ans
- 1. smartphone use surely plays a part
  - 2. smartphone use would surely play a part
  - 3. smartphone usage plays a part surely
  - 4. No Improvement

Question ID : 98958011508  
Status : Answered  
Chosen Option : 3

Q.1  
79 Select the most appropriate meaning of the given idiom.

Hit the nail on the head

- Ans
- 1. drive a nail into a wall
  - 2. hurt a person by telling the truth
  - 3. say or do something exactly right
  - 4. punish someone for a heinous crime

Question ID : 98958011532  
Status : Answered  
Chosen Option : 4

Q.1  
80 Select the antonym of the given word.

APPALLING

- Ans
- 1. horrible
  - 2. bloodless
  - 3. appealing
  - 4. alarming

Question ID : 98958011527  
Status : Answered  
Chosen Option : 2

Q.1 Select the most appropriate word to fill in the blanks.

81

Earth's north magnetic \_\_\_\_\_ has been drifting so fast in the last few decades that scientists say that past estimates are no longer accurate enough for precise \_\_\_\_\_.

- Ans
- 1. area; estimates
  - 2. region; estimates
  - 3. pole; navigation
  - 4. zone; navigation

Question ID : 98958011510

Status : Answered  
Chosen Option : 3

Q.1  
82 Select the synonym of the given word.

INDISTINGUISHABLE

- Ans
- 1. reflective
  - 2. equivalent
  - 3. profound
  - 4. comparable

Question ID : 98958011525  
Status : Answered  
Chosen Option : 2

Q.1  
83 Select the word, which means the same as the group of words given.

open rebellion of soldiers and sailors against lawful authority

- Ans
- 1. strike
  - 2. mutiny
  - 3. protest
  - 4. coup

Question ID : 98958011537  
Status : Answered  
Chosen Option : 4

Q.1  
84 Select the wrongly spelt word

- Ans
- 1. excavation
  - 2. elocution
  - 3. evecuation
  - 4. evocation

Question ID : 98958011544  
Status : Answered  
Chosen Option : 3

Q.1  
85 Select the most appropriate option to substitute the underlined segment in the given sentence. If there is no need to substitute it, select No Improvement.

The automation revolution has hit recruitment, with everything from facial expressions to vocal tone now analyzed with algorithms and artificial intelligence.

- Ans
- 1. now been analyzed with algorithms and artificial intelligence
  - 2. No Improvement
  - 3. now analyzed by algorithms and artificial intelligence

4. now analyzed in algorithms and with artificial intelligence

Question ID : 98958011507  
Status : Answered  
Chosen Option : 1

Q.1 Identify the segment in the sentence, which contains the grammatical error.  
86

Smartphone cameras can now take pictures of near-professional quality, so they also have limitations.

- Ans
- 1. so they also have limitations
  - 2. near-professional quality
  - 3. can now take
  - 4. pictures of

Question ID : 98958011500  
Status : Answered  
Chosen Option : 1

Q.1 Select the most appropriate word to fill in the blanks.  
87

A photograph should \_\_\_\_\_ at you and tell you loudly that something's \_\_\_\_\_.

- Ans
- 1. wink; strange
  - 2. look; scary
  - 3. shout; wrong
  - 4. laugh; easy

Question ID : 98958011512  
Status : Answered  
Chosen Option : 3

Q.1 Select the most appropriate option to substitute the underlined segment in the given sentence. If there is no need to substitute it, select No Improvement.  
88

A historian envisions a future in which humans cannot be able to survive at all if they do not remain connected.

- Ans
- 1. will not be able to survive at all
  - 2. not be able to survive at all
  - 3. No Improvement
  - 4. can be able to survive at all

Question ID : 98958011509  
Status : Answered  
Chosen Option : 1

Q.1 Select the word, which means the same as the group of words given.  
89

a mode of behavior or way of thought peculiar to an individual (not sub- or abnormal in any way)

- Ans
- 1. singular
  - 2. idiosyncratic



3. cynical

4. idiotic

Question ID : 98958011539  
Status : Not Answered  
Chosen Option : --

Q.1  
90 Select the antonym of the given word.

VOLITION

Ans  1. violence

2. disposition

3. willful

4. compulsion

Question ID : 98958011530  
Status : Not Answered  
Chosen Option : --

Q.1 Identify the segment in the sentence, which contains the grammatical error.

91

During hair transplantation, hair follicles is transplanted from one part of the head to another where the hair is thinning.

Ans  1. where the hair is thinning

2. hair follicles is transplanted

3. from one part of the head to another

4. During hair transplantation

Question ID : 98958011502  
Status : Answered  
Chosen Option : 2

Q.1  
92 Select the wrongly spelt word

Ans  1. councilor

2. consolation

3. conciliation

4. concomitant

Question ID : 98958011541  
Status : Answered  
Chosen Option : 1

Q.1  
93 Select the antonym of the given word.

DIURNAL

Ans  1. nocturnal

2. annual



3. irregular
4. occasional

Question ID : 98958011528  
Status : Not Answered  
Chosen Option : --

Q.1 Select the most appropriate word to fill in the blanks.

94

In general Earth's magnetic \_\_\_\_\_ is getting weaker, leading scientists to say that it will eventually flip, like a bar \_\_\_\_\_ flipping over.

- Ans  1. area; tender
2. field; magnet
3. power; gymnast
4. ground; chocolate

Question ID : 98958011514  
Status : Answered  
Chosen Option : 2

Q.1 Select the antonym of the given word.

95

OPAQUE

- Ans  1. absorbent
2. porous
3. transparent
4. dull

Question ID : 98958011526  
Status : Answered  
Chosen Option : 3

Q.1 Select the most appropriate meaning of the given idiom.

96

Back seat driving

- Ans  1. Commenting on players from the sidelines
2. Interfering in affairs without having knowledge
3. Instructing husbands over the phone about what to buy
4. Attempting to teach a cab driver how to drive.

Question ID : 98958011534  
Status : Answered  
Chosen Option : 2

Q.1 Select the synonym of the given word.

97

DISCERN

- Ans
- 1. regulate
  - 2. analyze
  - 3. control
  - 4. discriminate

Question ID : 98958011523  
Status : Not Answered  
Chosen Option : --

Q.1 Select the most appropriate option to substitute the underlined segment in the given sentence. If there is no need to substitute it, select No Improvement.

98 Authorities has been regular issuing avalanche warnings for vulnerable areas that have witnessed heavy snowfall.

- Ans
- 1. has been regularly issue
  - 2. have been regular issuing
  - 3. No Improvement
  - 4. have been regularly issuing

Question ID : 98958011506  
Status : Answered  
Chosen Option : 4

Q.1 Identify the segment in the sentence, which contains the grammatical error.

99

Regardless of class, income or race, parents believe that children who are bored after school should enrolled in extracurricular activities.

- Ans
- 1. in extracurricular activities.
  - 2. Regardless of class, income or race.
  - 3. should enrolled
  - 4. children who are bored after school

Question ID : 98958011504  
Status : Answered  
Chosen Option : 4

Q.2 Select the most appropriate meaning of the given idiom.

00

Carry a chip on one's shoulder

- Ans
- 1. Carrying multiple stars over the lapel
  - 2. Entertaining a grudge over a past event
  - 3. Having a plate inserted to fix the collar bone
  - 4. Moving daintily across rooms

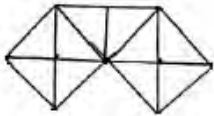
Question ID : 98958011533  
Status : Not Answered  
Chosen Option : --

## Recruitment of Sub-Inspector in Delhi Police, CAPFs and Assistant Sub-Inspector in CISF Examination, 2018

Roll No. :	
Registration No.	
Name :	
Exam Venue :	
Exam Time :	9:00 AM - 11:00 AM
Exam Date :	16/03/2019

Section : SI CPO

Q.1 How many triangles are there in the following figure?



- Ans
- 1. 20
  - 2. 21
  - 3. 19
  - 4. 24

Question ID : 98958012048  
Status : Answered  
Chosen Option : 2

Q.2 Three of the following four words are alike in a certain way and one is different. Find the odd one out.

- Ans
- 1. Stationery
  - 2. Eraser
  - 3. Pen
  - 4. Paper

Question ID : 98958012014  
Status : Answered  
Chosen Option : 1

Q.3 Select the option that is related to the third term in the same way as the second term is related to the first term.

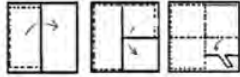
FLOWER : UOLDVI :: JASMINE : \_\_\_\_\_

- Ans
- 1. QZGMRMV
  - 2. QZHMRNV
  - 3. QAHNRMV
  - 4. QZHNRMV

Question ID : 98958012020  
Status : Answered  
Chosen Option : 4

Q.4

The sequence of folding a piece of square paper and the manner in which the folded paper has been cut is shown. How would this paper look when unfolded?



Ans

1.



2.



3.



4.



Question ID : 98958012054

Status : Answered

Chosen Option : 3

**Q.5** Kunal's house is located to the south of a coffee shop. There is a park to the east of the coffee shop. The local market is to the north of the park. If the distance of the market from the park is equal to the distance of the coffee shop from Kunal's house, in which direction is the market with respect to the coffee shop?

Ans

1. West

2. South-East

3. North-East

4. South-West

Question ID : 98958012044

Status : Answered

Chosen Option : 3

**Q.6** Two statements are given, followed by two conclusions I and II. Assuming these statements to be true, even if they seem to be at variance with commonly known facts, decide which of the given conclusions logically follow(s) from the statements.

**Statements:**

All executives are humble people.  
All humble people are rich.

**Conclusions:**

- I. All executives are rich.  
II. All humble people are executives.

Ans

1. Only conclusion I follows.

2. Only conclusion II follows.

3. Neither conclusion I nor II follows.

4. Both conclusions I and II follow.

Question ID : 98958012026

Status : Answered

Chosen Option : 1

Q.7 Select the number-pair in which the two numbers are related in the same way as are the two numbers of the given number pair.

11 : 242

- Ans
- 1. 15 : 375
  - 2. 5 : 52
  - 3. 8 : 128
  - 4. 9 : 729

Question ID : 98958012032

Status : Answered

Chosen Option : 3

Q.8 Select the word-pair in which the two words are related in the same way as are the two words in the given word-pair.

Surgeon : Scalpel

- Ans
- 1. Tailor : Shirt
  - 2. Doctor : Hospital
  - 3. Navy : Lieutenant
  - 4. Sculptor : Chisel

Question ID : 98958012018

Status : Answered

Chosen Option : 4

Q.9 Three of the following four numbers are alike in a certain way and one is different. Identify the different one.

- Ans
- 1. 8
  - 2. 34
  - 3. 64
  - 4. 16

Question ID : 98958012035

Status : Answered

Chosen Option : 2

Q.1<sub>0</sub> Which letter-cluster will replace the question mark (?) in the following series?

CFZ, EGX, HIU, JLS, MPP, ?

- Ans
- 1. NTO
  - 2. OTN
  - 3. MSN
  - 4. OUN

Question ID : 98958012009

Status : Answered

Chosen Option : 4

Q.1<sub>1</sub> Select the option that will come next in the given series.



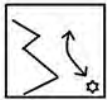


Ans

- 1.
- 2.
- 3.
- 4.

Question ID : 98958012047  
 Status : Answered  
 Chosen Option : 3

Q.1 Select the correct mirror image of the given figure, when the mirror is placed at the right side.



Ans

- 1.
- 2.
- 3.
- 4.

Question ID : 98958012052  
 Status : Answered  
 Chosen Option : 3

Q.1 Select the number-pair in which the two numbers are related in the same way as are the two numbers of the given number pair.

343 : 512

- 1. 1009 : 1331
- 2. 27 : 125
- 3. 216 : 729
- 4. 8 : 27

Question ID : 98958012033

Status : Answered

Chosen Option : 4

Q.1 निम्नलिखित चार शब्दों में से तीन किसी विशिष्ट सन्दर्भ में एक दूसरे के समान हैं और एक असमान है। असमान शब्द का चयन कीजिए।

- Ans
- 1. आश्रयालय (हैबीटेट)
  - 2. अस्तबल
  - 3. मांद
  - 4. बाड़ा (बार्न)

Question ID : 98958012015

Status : Answered

Chosen Option : 3

Q.1 Select the Venn diagram that represents the correct relationship between the following classes.

5  
Cat, Mammal, Parrot

- Ans
- 1.
  - 2.
  - 3.
  - 4.

Question ID : 98958012055

Status : Answered

Chosen Option : 2

Q.1 Three of the following four numbers are alike in a certain way and one is different. Identify the different one.

- 6  
Ans
- 1. 396
  - 2. 792
  - 3. 571
  - 4. 451

Question ID : 98958012034

Status : Marked For Review

Chosen Option : 1

Q.1 If A = 2 and C = 4, then PARTICLE = \_\_\_\_\_.

- 7  
Ans
- 1. 172172094136
  - 2. 1621820104136
  - 3. 1721921104136
  - 4. 172192094126

Question ID : 98958012025

Status : Answered

Chosen Option : 3

Q.1 Three of the following four number-pairs are alike in a certain way and one is different. Identify the different one.

8

- Ans
- 1. 14 : 3
  - 2. 7 : 6
  - 3. 12 : 4
  - 4. 21 : 2

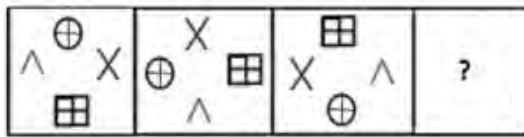
Question ID : 98958012037

Status : Answered

Chosen Option : 3

Q.1 Select the option that will come next in the given series.

9



Ans

- 1.
- 2.
- 3.
- 4.

Question ID : 98958012045

Status : Answered

Chosen Option : 1

Q.2 Which number will replace the question mark (?) in the following series?

0

3, ?, 101, 10202

- Ans
- 1. 95
  - 2. 10
  - 3. 100
  - 4. 99

Question ID : 98958012030

Status : Answered

Chosen Option : 2

Q.2 'Month' is related to 'March' in the same way as 'Season' is related to '\_\_\_\_\_'.  
1

- Ans  1. Year  
 2. Festival  
 3. Spring  
 4. Week

Question ID : 98958012017  
 Status : Answered  
 Chosen Option : 3

Q.2 Find out the two signs to be interchanged for making following equation correct.

$$\frac{1}{4} \div \frac{1}{64} - 5 + 45 \times 120 = 5$$

- Ans  1. + and ×  
 2. × and -  
 3. + and -  
 4. - and ÷

Question ID : 98958012042  
 Status : Answered  
 Chosen Option : 2

Q.2 Select the option that is related to the fourth term in the same way as the first term is related to the second term.

3 FHK : KMP :: \_\_\_\_\_ : UWZ

- Ans  1. PRV  
 2. PRU  
 3. PSU  
 4. ORU

Question ID : 98958012021  
 Status : Answered  
 Chosen Option : 2

Q.2 Two statements are given, followed by two conclusions I and II. Assuming these statements to be true, even if they seem to be at variance with commonly known facts, decide which of the given conclusions logically follow(s) from the statements.

**Statements:**

Some bedsheets are towels.  
 Some towels are pillows.

**Conclusions:**

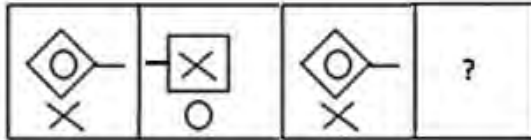
- I. Some pillows are bedsheets.  
 II. No pillow is a bedsheets.

- Ans  1. Only conclusion I follows.  
 2. Only conclusion II follows.  
 3. Neither conclusion I nor II follows.  
 4. Either conclusion I or II follows.

Question ID : 98958012027  
 Status : Answered  
 Chosen Option : 4

Q.2  
5

Select the option that will come next in the given series.



Ans

- 1.
- 2.
- 3.
- 4.

Question ID : 98958012046

Status : Answered

Chosen Option : 2

Q.2 Select the Venn diagram that represents the correct relationship between the following classes.

6

World, Asia, Nepal

Ans

- 1.
- 2.
- 3.
- 4.

Question ID : 98958012056

Status : Answered

Chosen Option : 4

Q.2 Which letter will replace the question mark (?) in the following series?

7

C, F, K, R, A, ?

Ans

1. J
2. I
3. M
4. L

Question ID : 98958012008



Status : **Answered**  
Chosen Option : **4**

Q.2 Which two signs should be interchanged to make the following equation correct?

$$7 \times 2 + 5 - 16 \div 4 = 13$$

- Ans  1.  $\times$  and  $+$   
 2.  $\div$  and  $\times$   
 3.  $\div$  and  $+$   
 4.  $\times$  and  $-$

Question ID : **98958012040**  
Status : **Answered**  
Chosen Option : **1**

Q.2 In a certain code language, CADET is written as 31457. How will DEFER be written as in the same language?

- Ans  1. 45769  
 2. 45678  
 3. 45659  
 4. 35658

Question ID : **98958012024**  
Status : **Answered**  
Chosen Option : **3**

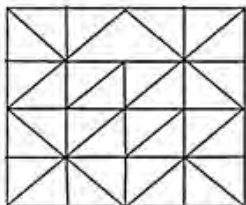
Q.3 Select the correct alternative to indicate the arrangement of the following words in a logical and meaningful order.

1. Classes
2. Entrance Exam
3. Result
4. Admission
5. Graduation
6. Job


- Ans  1. 6, 2, 5, 4, 3, 1  
 2. 5, 2, 6, 4, 3, 1  
 3. 2, 3, 4, 1, 5, 6  
 4. 2, 3, 4, 1, 6, 5

Question ID : **98958012011**  
Status : **Answered**  
Chosen Option : **3**

Q.3 Select the option that is embedded in the following figure.



- Ans  1.



Question ID : 98958012051  
Status : Answered  
Chosen Option : 3

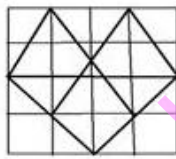
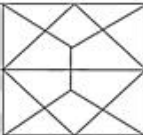
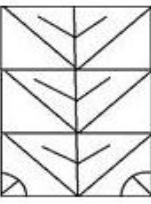
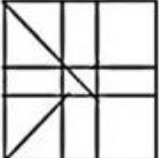
Q.3 उस विकल्प का चयन कीजिए जिसमें शब्द-युग्म के बीच वही सम्बन्ध है जो निम्नलिखित शब्द-युग्म के दो शब्दों के बीच है।  
घोड़ा : सरपट चाल

- Ans  1. चूहा : गड़ढा
2. पक्षी : उड़ना
3. हाथी : विशालकाय
4. शेर : दहाड़ना

Question ID : 98958012019  
Status : Answered  
Chosen Option : 2

Q.3 Select the option in which the given figure is embedded.



- Ans  1. 
2. 
3. 
4. 

Question ID : 98958012050  
Status : Answered

Chosen Option : 2

Q.3 4 Three of the following four number-pairs are alike in a certain way and one is different. Identify the different one.

- Ans
- 1. 54 : 64
  - 2. 28 : 32
  - 3. 119 : 136
  - 4. 91 : 104

Question ID : 98958012036

Status : Marked For Review

Chosen Option : 1

Q.3 5 Which number will replace the question mark (?) in the following series?

0.15, 0.20, 0.30, 0.45, 0.65, ?

- Ans
- 1. 0.90
  - 2. 0.80
  - 3. 0.95
  - 4. 0.85

Question ID : 98958012029

Status : Answered

Chosen Option : 1

Q.3 6 Identify the number that does NOT belong in the given series.

2, 6, 6, 10, 8, 12, 12, 15, 14, 18

- Ans
- 1. 18
  - 2. 12
  - 3. 15
  - 4. 8

Question ID : 98958012028

Status : Not Attempted and Marked For Review

Chosen Option : --

Q.3 7 'Temperature' is related to 'Degree' in the same way as 'Time' is related to '\_\_\_\_\_'.  
7

- Ans
- 1. Litre
  - 2. Metre
  - 3. Newton
  - 4. Seconds

Question ID : 98958012016

Status : Answered

Chosen Option : 4

Q.3 8 Arjun starts walking towards the east. After walking 50 m, he turns to his left and walks 15 m. From there, he again turns to his left and walks 30 m. Finally, he turns to his left one last time and walks 15 m. How far is he from the starting point?

- Ans
- 1. 40 m
  - 2. 10 m
  - 3. 30 m

✓ 4. 20 m

Question ID : 98958012043  
Status : Answered  
Chosen Option : 4

Q.3 If '+' means '×', '×' means '+', '-' means '-' and '-' means '+', then what will be the value of the following expression?

$$16 \times 3 + 5 - 2 + 4$$

Ans ✗ 1. 7

✓ 2. 9

✗ 3. 10

✗ 4. 19

Question ID : 98958012041  
Status : Answered  
Chosen Option : 2

Q.4 In a code language, CERTAIN is written as DFSUBJO. How will SUMMER be written as in that language?

Ans ✗ 1. RVNNFS

✗ 2. TUNMFS

✗ 3. TVNNFT

✓ 4. TVNNFS

Question ID : 98958012022  
Status : Answered  
Chosen Option : 4

Q.4 Select the set of numbers that is similar to the following set of numbers.

(25, 144, 47)

Ans ✗ 1. (16, 82, 23)

✗ 2. (9, 72, 8)

✗ 3. (15, 96, 340)

✓ 4. (19, 78, 20)

Question ID : 98958012039  
Status : Answered  
Chosen Option : 4

Q.4 Select the option that is related to the third number in the same way as the second number is related to the first number.

16 : 68 :: 28 : \_\_\_\_\_

Ans ✓ 1. 119

✗ 2. 49

✗ 3. 346

✗ 4. 77

Question ID : 98958012031  
Status : Not Attempted and Marked For Review  
Chosen Option : --

Q.4

3 Select the correct alternative to indicate the arrangement of the following words in a logical and meaningful order.

1. Hour
2. Month
3. Second
4. Days
5. Minute
6. Week

- Ans
1. 6, 2, 5, 4, 3, 1
2. 3, 5, 1, 4, 6, 2
3. 2, 3, 4, 1, 5, 6
4. 2, 3, 4, 1, 6, 5

Question ID : 98958012010  
Status : Answered  
Chosen Option : 2

Q.4 Three of the following four letter-clusters are alike in a certain way and one is different. Find the odd one out.

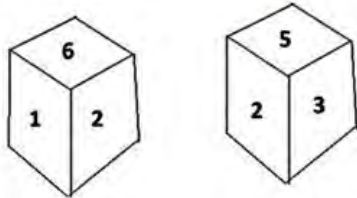
4

- Ans
1. KMPT
2. OQSV
3. QSVZ
4. EGJN

Question ID : 98958012012  
Status : Answered  
Chosen Option : 2

Q.4 Two positions of the same dice are shown. What will be the number opposite '3'?

5



- Ans
1. 4
2. 6
3. 2
4. 1

Question ID : 98958012049  
Status : Not Attempted and Marked For Review  
Chosen Option : --

Q.4 Select the set of numbers that is similar to the following set of numbers.

6

(4, 24, 214)

- Ans
1. (8, 81, 721)
2. (3, 27, 81)
3. (2, 26, 125)
4. (5, 35, 341)

Question ID : 98958012038  
Status : Not Attempted and Marked For Review



Chosen Option : --

Q.4 7 If in a certain code, WATER is written as XZUDS, then which word will be coded as BMHKF?

- Ans
- 1. CLING
  - 2. ALIEN
  - 3. EARTH
  - 4. ANGLE

Question ID : 98958012023

Status : Answered

Chosen Option : 4

Q.4 8 Three of the following four letter-clusters are alike in a certain way and one is different. Find the odd one out.

- Ans
- 1. SWYBE
  - 2. HKNQT
  - 3. CFILO
  - 4. QTWZC

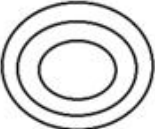
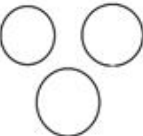


Question ID : 98958012013

Status : Answered

Chosen Option : 1

Q.4 9 Select the Venn diagram that represents the correct relationship between the following classes.

Females, Mothers, Fathers

- Ans
- 1. 
  - 2. 
  - 3. 
  - 4. 



Question ID : 98958012057

Status : Answered

Chosen Option : 3

Q.5 0 Select the correct mirror image of the given image, when the mirror is placed at the right side.

EFRI95uh

- Ans
- 1. 
  - 2. 

3. **हनुमन्**

4. **हनुमान**

Question ID : **98958012053**  
Status : **Answered**  
Chosen Option : **3**

Q.5  
1 Name the 'Father of Indian Economic Reforms'.

- Ans  1. Narendra Modi  
 2. PV Narasimha Rao  
 3. Yashwant Sinha  
 4. Manmohan Singh

Question ID : **98958011863**  
Status : **Answered**  
Chosen Option : **4**

Q.5  
2 Iron boils at about \_\_\_\_\_ degree Celsius.

- Ans  1. 3861  
 2. 2861  
 3. 2181  
 4. 3182

Question ID : **98958011874**  
Status : **Not Answered**  
Chosen Option : --

Q.5  
3 The Chipko movement is associated with:

- Ans  1. Sustainable development  
 2. Transparency in public life  
 3. Afforestation  
 4. Preventing the felling of trees

Question ID : **98958011872**  
Status : **Answered**  
Chosen Option : **3**

Q.5  
4 Adults with an annual income between \_\_\_\_\_ can avail of a housing loan under the Pradhan Mantri Awas Yojana.

- Ans  1. 6 and 15 lakhs  
 2. 6 and 18 lakhs  
 3. 6 and 25 lakhs  
 4. 6 and 21 lakhs

Question ID : **98958011864**  
Status : **Not Answered**  
Chosen Option : --

Q.5  
5 'Capra aegagrus hircus' is commonly known as \_\_\_\_\_.

- Ans
- 1. Dog
  - 2. Cow
  - 3. Goat
  - 4. Hen

Question ID : 98958011876  
Status : Not Attempted and Marked For Review  
Chosen Option : --

Q.5 As head of a reputed advertising agency, \_\_\_\_\_ created iconic advertisements for Surf detergent, Liril bath soap, Bajaj  
6 scooters and Cherry Blossom shoe polish.

- Ans
- 1. Gerson da Cunha
  - 2. Prahlad Kakkar
  - 3. Alyque Padamsee
  - 4. Prasoon Joshi

Question ID : 98958011894  
Status : Not Answered  
Chosen Option : --

Q.5 Navakalevara is a ritual that takes place in a temple in \_\_\_\_\_.  
7

- Ans
- 1. Tirupati
  - 2. Shirdi
  - 3. Jagannath Puri
  - 4. Sabrimala

Question ID : 98958011860  
Status : Not Attempted and Marked For Review  
Chosen Option : --

Q.5 Guru \_\_\_\_\_ is known as the cobbler saint.  
8

- Ans
- 1. Ayya Vaikundar
  - 2. Jiva Goswami
  - 3. Ravidas
  - 4. Narahari

Question ID : 98958011861  
Status : Not Answered  
Chosen Option : --

Q.5 Which is the seventh largest country in the world by land area?  
9

- Ans
- 1. Australia
  - 2. Argentina
  - 3. Brazil
  - 4. India

Question ID : 98958011884  
Status : Answered  
Chosen Option : 4

Q.6  
0 Who started the temple entry movement in 1927?

- Ans
- 1. Vinobha Bhave
  - 2. Medha Patkar
  - 3. Mahatma Gandhi
  - 4. Bhimrao Ambedkar

Question ID : 98958011887  
Status : Not Attempted and Marked For Review  
Chosen Option : --

Q.6  
1 As per the Guinness World Records, which of the following was the world's richest temple in 2011?

- Ans
- 1. Jagannath Temple
  - 2. Tirumala Tirupati Venkateswara Temple
  - 3. Sree Padmanabha Swami Temple
  - 4. Siddhi Vinayak Temple

Question ID : 98958011859  
Status : Marked For Review  
Chosen Option : 3

Q.6  
2 Name the long-haired mammals found throughout the Himalayan region.

- Ans
- 1. Heifer
  - 2. Bison
  - 3. Ox
  - 4. Yak

Question ID : 98958011885  
Status : Answered  
Chosen Option : 4

Q.6  
3 \_\_\_\_\_ is known as the 'Father of Indian Ornithology'.

- Ans
- 1. John James Audubon
  - 2. Konrad Lorenz
  - 3. Salim Ali
  - 4. Allan Octavian Hume

Question ID : 98958011868  
Status : Not Attempted and Marked For Review  
Chosen Option : --

Q.6  
4 Sunita Williams, renowned astronaut of Indian origin, spent a record of \_\_\_\_\_ days in space.

- Ans
- 1. 150
  - 2. 195
  - 3. 175
  - 4. 200

Question ID : 98958011892  
Status : Not Answered

Chosen Option : --

Q.6  
5 The inaugural session of the Supreme Court of India took place on \_\_\_\_\_.

- Ans
- 1. 26<sup>th</sup> January 1950
  - 2. 28<sup>th</sup> January 1950
  - 3. 29<sup>th</sup> January 1950
  - 4. 31<sup>st</sup> January 1950

Question ID : 98958011902

Status : Not Attempted and Marked For Review

Chosen Option : --

Q.6  
6 At what temperature does iron melt?

- Ans
- 1. 1638°C
  - 2. 1538°C
  - 3. 1583°C
  - 4. 1683°C

Question ID : 98958011873

Status : Not Answered

Chosen Option : --

Q.6  
7 Sound cannot travel through \_\_\_\_\_.

- Ans
- 1. fire
  - 2. soil
  - 3. water
  - 4. vacuum

Question ID : 98958011871

Status : Marked For Review

Chosen Option : 4

Q.6  
8 Which of the following creatures use ultrasonic sound to catch their prey?

- Ans
- 1. Hawks
  - 2. Bats
  - 3. Cats
  - 4. Dogs

Question ID : 98958011870

Status : Answered

Chosen Option : 2

Q.6  
9 Who hoists the national flag at the Red Fort on Independence Day?

- Ans
- 1. Chief Justice
  - 2. Prime Minister
  - 3. Governor
  - 4. President



Question ID : 98958011899

Status : Answered

Chosen Option : 2

Q.7  
0 Which cricketer made his Test debut in Karachi at the age of 16?

- Ans
- 1. Hardik Pandya
  - 2. Rahul Dravid
  - 3. Sachin Tendulkar
  - 4. Shanthakumaran Sreesanth

Question ID : 98958011895

Status : Answered

Chosen Option : 3

Q.7  
1 \_\_\_\_\_ was the Chief Justice of India from January 1950 to November 1951.

- Ans
- 1. Bijan Kumar Mukherjea
  - 2. Mehr Chand Mahajan
  - 3. Harilal Jekisundas Kania
  - 4. Bhuvaneshwar Prasad Sinha

Question ID : 98958011903

Status : Not Answered

Chosen Option : --

Q.7  
2 The world's largest cricket stadium is being built in which state of India?

- Ans
- 1. Gujarat
  - 2. Chandigarh
  - 3. West Bengal
  - 4. Maharashtra

Question ID : 98958011882

Status : Answered

Chosen Option : 1

Q.7  
3 Currency printing press of India is NOT located in \_\_\_\_\_.

- Ans
- 1. Kochi
  - 2. Mysore
  - 3. Salboni
  - 4. Dewas

Question ID : 98958011867

Status : Not Answered

Chosen Option : --

Q.7  
4 The pH of pure water (H<sub>2</sub>O) is \_\_\_\_\_ at 25 degree Celsius.

- Ans
- 1. 8
  - 2. 7
  - 3. 9

4. 6

Question ID : 98958011879  
Status : Answered  
Chosen Option : 2

Q.7  
5 'Megaptera novaeangliae' is commonly known as \_\_\_\_\_.

- Ans
- 1. Bumblebee
  - 2. Tree frog
  - 3. African wild cat
  - 4. Humpback whale

Question ID : 98958011869  
Status : Not Attempted and Marked For Review  
Chosen Option : --

Q.7  
6 Who said the following words?

"A flag is a necessity for all nations. Millions have died for it."

- Ans
- 1. Sarojini Naidu
  - 2. Jawaharlal Nehru
  - 3. Bhikaiji Cama
  - 4. Mahatma Gandhi

Question ID : 98958011889  
Status : Not Attempted and Marked For Review  
Chosen Option : --

Q.7  
7 Which of the following is NOT a popular Gharana (styles) of Hindustani classical music?

- Ans
- 1. Patiala Gharana
  - 2. Gwalior Gharana
  - 3. Mewati Gharana
  - 4. Rajwadi Gharana

Question ID : 98958011858  
Status : Not Answered  
Chosen Option : --

Q.7  
8 NASA launched the world's smallest and lightest satellite, KalamSat on 22 June 2017 devised by 18-year-old \_\_\_\_\_ and his team from Tamil Nadu.

- Ans
- 1. Sharook Rashid
  - 2. Khursheed Rifath
  - 3. Rifath Sharook
  - 4. Salman Rashid

Question ID : 98958011877  
Status : Marked For Review  
Chosen Option : 3

Q.7  
9 \_\_\_\_\_ of Kenya won the Mumbai Marathon, 2019

- Ans
- 1. Akalnew Shumet
  - 2. Aychew Bantie
  - 3. Cosmas Lagat
  - 4. Birke Debele

Question ID : 98958011904  
Status : Not Answered  
Chosen Option : --

Q.8  
0 'Canis lupus' is commonly known as \_\_\_\_\_.

- Ans
- 1. Gray wolf
  - 2. Goat
  - 3. Hen
  - 4. Cow

Question ID : 98958011875  
Status : Not Answered  
Chosen Option : --

Q.8  
1 The first Invasion of Muhammad Ghori was in \_\_\_\_\_ when he attacked Multan.

- Ans
- 1. 1287 AD
  - 2. 1475 AD
  - 3. 1089 AD
  - 4. 1175 AD

Question ID : 98958011890  
Status : Marked For Review  
Chosen Option : 3

Q.8  
2 India holds the \_\_\_\_\_ position in the production of cows' milk as of January 2018.

- Ans
- 1. Second
  - 2. Fourth
  - 3. First
  - 4. Third

Question ID : 98958011866  
Status : Not Answered  
Chosen Option : --

Q.8  
3 The minimum age criteria for appointment as the Vice President of India is \_\_\_\_\_.

- Ans
- 1. 21
  - 2. 30
  - 3. 35
  - 4. 25

Question ID : 98958011898  
Status : Answered  
Chosen Option : 2

Q.8  
4 The dance form 'Dandia' is synonymous with \_\_\_\_\_.

- Ans
- 1. Navratri
  - 2. Onam
  - 3. Bihu
  - 4. Ganesh Chaturthi

Question ID : 98958011862  
Status : Answered  
Chosen Option : 1

Q.8  
5 Apart from the first edition, New Delhi also hosted the \_\_\_\_\_ edition of the Asian Games.

- Ans
- 1. 7<sup>th</sup>
  - 2. 9<sup>th</sup>
  - 3. 8<sup>th</sup>
  - 4. 11<sup>th</sup>

Question ID : 98958011907  
Status : Not Attempted and Marked For Review  
Chosen Option : --

Q.8  
6 After 1994, how many sessions of the Rajya Sabha are usually held in a year?

- Ans
- 1. four
  - 2. three
  - 3. two
  - 4. six

Question ID : 98958011901  
Status : Not Answered  
Chosen Option : --

Q.8  
7 As of AY 2019-20, what is the rate of income tax payable by an Indian national over the age of 80 years, earning an annual income up to ₹ 5,00,000?

- Ans
- 1. 20%
  - 2. 5%
  - 3. 0%
  - 4. 30%

Question ID : 98958011865  
Status : Answered  
Chosen Option : 3

Q.8  
8 India's ace shuttler and Rio Olympics silver medallist \_\_\_\_\_ was ranked seventh on Forbes' list 2018 of highest-earning women sportspersons in the world.

- Ans
- 1. Sania Mirza
  - 2. Saina Nehwal
  - 3. Santosh Yadav
  - 4. PV Sindhu

Question ID : 98958011905  
Status : Answered

Chosen Option : 4

Q.8  
9 Who was the economist who wrote the book 'Small is beautiful'?

- Ans
- 1. David Ricardo
  - 2. Amartya Sen
  - 3. Karl Marx
  - 4. E. F. Schumacher

Question ID : 98958011897  
Status : Not Answered  
Chosen Option : --

Q.9  
0 Who wrote the book 'The Audacity of Hope'?

- Ans
- 1. Bill Clinton
  - 2. Bill Gates
  - 3. George Bush
  - 4. Barack Obama

Question ID : 98958011896  
Status : Not Attempted and Marked For Review  
Chosen Option : --

Q.9  
1 In January 2019, NASA's Transiting Exoplanet Survey Satellite (TESS) discovered its third small exoplanet, named HD 21749b in the constellation \_\_\_\_\_.

- Ans
- 1. Lupus
  - 2. Lacerta
  - 3. Reticulum
  - 4. Antlia

Question ID : 98958011878  
Status : Not Attempted and Marked For Review  
Chosen Option : --

Q.9  
2 Who is known as the 'Father of Indian Nuclear Programme'?

- Ans
- 1. Vikram Sarabhai
  - 2. CV Raman
  - 3. Homi Jehangir Bhabha
  - 4. APJ Abdul Kalam

Question ID : 98958011893  
Status : Answered  
Chosen Option : 3

Q.9  
3 Shivaji's son from Saibai was named \_\_\_\_\_.

- Ans
- 1. Shahaji
  - 2. Shahu
  - 3. Sambhaji
  - 4. Bajirao



Question ID : 98958011886

Status : Answered

Chosen Option : 2

Q.9 Under Article \_\_\_\_\_ of the Constitution of India, the quorum to constitute a sitting of the House is one-tenth of the total  
4 number of Members of the House.

- Ans
- 1. 102
  - 2. 100
  - 3. 103
  - 4. 101

Question ID : 98958011900

Status : Marked For Review

Chosen Option : 1

Q.9  
5 Calcutta became the capital of British India in \_\_\_\_\_.

- Ans
- 1. 1765
  - 2. 1727
  - 3. 1756
  - 4. 1772

Question ID : 98958011880

Status : Marked For Review

Chosen Option : 3

Q.9  
6 Who founded the Servants of India Society in 1905?

- Ans
- 1. Sayid Ahmed Khan
  - 2. Annie Besant
  - 3. Gopal Krishna Gokhale
  - 4. Raja Ram Mohan Roy

Question ID : 98958011891

Status : Not Answered

Chosen Option : --

Q.9  
7 With which of the following games is the Deodhar Trophy associated?

- Ans
- 1. Hockey
  - 2. Football
  - 3. Cricket
  - 4. Golf

Question ID : 98958011906

Status : Answered

Chosen Option : 2

Q.9  
8 In pre-independent India, the British moved the capital of India from Calcutta to Delhi in \_\_\_\_\_.

- Ans
- 1. 1911
  - 2. 1913
  - 3. 1924
  - 4. 1921

Question ID : 98958011881

Status : Marked For Review

Chosen Option : 2

Q.9 The \_\_\_\_\_ waterfalls in Chhattisgarh are also known as the Niagara Falls of India.

- Ans
- 1. Hebbe
  - 2. Dudhsagar
  - 3. Magod
  - 4. Chitrakoot

Question ID : 98958011883

Status : Not Attempted and Marked For Review

Chosen Option : --

Q.100 The Nehru-Liaquat Pact was signed in \_\_\_\_\_.

- Ans
- 1. 1948
  - 2. 1947
  - 3. 1949
  - 4. 1950

Question ID : 98958011888

Status : Not Answered

Chosen Option : --

Q.101 A square cardboard with side 3 m is folded through one of its diagonal to make a triangle. The height of the triangle is:

- Ans
- 1.  $\frac{3}{\sqrt{2}}$  m
  - 2.  $2\sqrt{3}$  m
  - 3.  $3\sqrt{2}$  m
  - 4.  $\frac{2}{\sqrt{3}}$  m

Question ID : 98958012244

Status : Answered

Chosen Option : 3

Q.102 What percentage of ₹124 is ₹49.60?

- Ans
- 1. 250
  - 2. 16
  - 3. 123
  - 4. 40

Question ID : 98958012220

Status : Answered

Chosen Option : 4

Q.103  $\sin 18^\circ - \cos 72^\circ$  is equal to:

- Ans
- 1.  $\frac{1}{2}$
  - 2. 0

3. 2
4. 1

Question ID : 98958012246  
 Status : Answered  
 Chosen Option : 2

Q.1  
 04 The surface area of a cube is  $1176 \text{ cm}^2$ . Its volume is:

- Ans  1.  $3486 \text{ cm}^3$
2.  $3206 \text{ cm}^3$
3.  $2744 \text{ cm}^2$
4.  $3964 \text{ cm}^3$

Question ID : 98958012236  
 Status : Answered  
 Chosen Option : 3

Q.1  
 05 A boy is standing near a pole which is 2.7 m high and the angle of elevation is  $30^\circ$ . The distance of the boy from the pole is ( $\sqrt{3}=1.73$ ):

- Ans  1. 4.68 m
2. 4.63 m
3. 4.53 m
4. 4.42 m

Question ID : 98958012248  
 Status : Answered  
 Chosen Option : 1

Q.1  
 06 Find the inner surface area of four walls of a rectangular room with length 7 m breadth 5 m and height 3.5 m.

- Ans  1.  $168 \text{ m}^2$
2.  $84 \text{ m}^2$
3.  $126 \text{ m}^2$
4.  $42 \text{ m}^2$

Question ID : 98958012233  
 Status : Answered  
 Chosen Option : 2

Q.1  
 07 The given pie-chart shows runs scored by A in 6 matches.



In the given pie-chart, if A scored a century in matches 4 and 6, what would have been her average score?

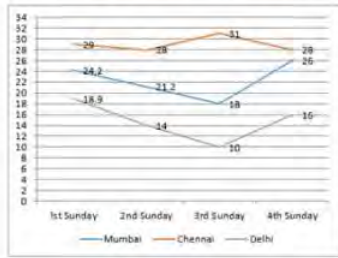
- Ans  1. 89.7
2. 93.4
3. 91.2

4. 84.5

Question ID : 98958012254  
Status : Answered  
Chosen Option : 1

Q.1 The line graph shows the temperature on four Sundays of three cities.

08



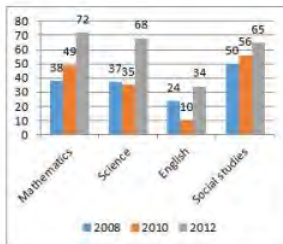
In the given line graph, what was the difference in temperature between Delhi and Mumbai on the 2nd Sunday?

- Ans  1. 13  
 2. 17.2  
 3. 7.2  
 4. 21

Question ID : 98958012257  
Status : Answered  
Chosen Option : 3

Q.1 The given bar chart shows number of marks scored by a student in each subject in three years:

09



In the given bar-chart, what is the percentage increase in marks in Mathematics in 2012 compared to 2008?(round off)

- Ans  1. 89  
 2. 100  
 3. 95  
 4. 92

Question ID : 98958012250  
Status : Answered  
Chosen Option : 1

Q.1 On dividing a number by 38, the quotient is 24 and the remainder is 13, the number is:

10

- Ans  1. 956  
 2. 904  
 3. 925  
 4. 975

Question ID : 98958012214  
Status : Answered  
Chosen Option : 3

Q.1 A can do a work in 12 days and B can do same work in 18 days. After 5 days of working together, how much work will be left?

11

- Ans
1.  $\frac{7}{25}$
2.  $\frac{11}{36}$
3.  $\frac{5}{13}$
4.  $\frac{5}{12}$

Question ID : 98958012227

Status : Answered

Chosen Option : 2

Q.1  
12 A customer gets a discount of ₹90 which is 12%. The selling price is:

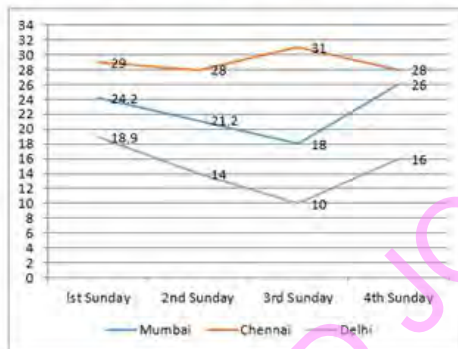
- Ans
1. ₹770
2. ₹540
3. ₹660
4. ₹580

Question ID : 98958012217

Status : Answered

Chosen Option : 3

Q.1  
13 The line graph shows the temperature on four Sundays of three cities.



In the given line graph, when was the maximum temperature recorded in Delhi?

- Ans
1. 1<sup>st</sup> Sunday
2. 2<sup>nd</sup> Sunday
3. 4<sup>th</sup> Sunday
4. 3<sup>rd</sup> Sunday

Question ID : 98958012255

Status : Answered

Chosen Option : 1

Q.1  
14 If  $a^3 - b^3 = 208$  and  $a - b = 8$ , then  $(a + b)^2 - ab$  is equal to:

- Ans
1. 42
2. 38
3. 52
4. 26



Question ID : **98958012240**  
 Status : **Marked For Review**  
 Chosen Option : **4**

**Q.1** The base of an isosceles triangle is 6 cm and its perimeter is 16 cm. Its area is:

15

- Ans
- 1. 11 cm<sup>2</sup>
  - 2. 12 cm<sup>2</sup>
  - 3. 9 cm<sup>2</sup>
  - 4. 10 cm<sup>2</sup>

Question ID : **98958012243**  
 Status : **Answered**  
 Chosen Option : **2**

**Q.1** If the compound interest @ 10% p.a compounded half-yearly for  $1\frac{1}{2}$  years is ₹2,522, The principal amount is:

16

- Ans
- 1. ₹16,000
  - 2. ₹15,400
  - 3. ₹18,500
  - 4. ₹20,000

Question ID : **98958012226**  
 Status : **Not Attempted and Marked For Review**  
 Chosen Option : --

**Q.1**  $\frac{14-6 \times 2}{15 \div 3+3}$  is equal to:

17

- Ans
- 1.  $\frac{1}{4}$
  - 2. 2
  - 3.  $\frac{4}{5}$
  - 4.  $6\frac{2}{5}$

Question ID : **98958012212**  
 Status : **Answered**  
 Chosen Option : **1**

**Q.1** At a certain time of a day a tree 5.4 m height casts a shadow of 9 m. If a pole casts a shadow of 13.5 m at the same time, the height of the pole is:

18

- Ans
- 1. 6.3 m
  - 2. 9.9 m
  - 3. 7.2 m
  - 4. 8.1 m

Question ID : **98958012223**  
 Status : **Answered**  
 Chosen Option : **4**

**Q.1** Three partners A, B and C, share profits and losses in the ratio of 3 : 4 : 7. If the profit for the year before charging 30% tax is ₹1,10,166 what is B's share of profit after tax?

19

Ans

1. ₹22,033.20

2. ₹24,673.10

3. ₹31,476

4. ₹9,442.80

Question ID : 98958012224

Status : Answered

Chosen Option : 1

Q.1 The shadow of a tower, when the angle of elevation of the sun is  $60^\circ$  is found to be 15 m shorter than when it is  $45^\circ$ .

20 The height of the tower is:

Ans  1. 26.5 m

2. 35.5 m

3. 41.5 m

4. 20.5 m

Question ID : 98958012247

Status : Not Attempted and Marked For Review

Chosen Option : --

Q.1 ABCD is a cyclic quadrilateral such that AB is a diameter of the circle circumscribing it and angle  $ADC = 142^\circ$ . Then

21 angle BAC is equal to:

Ans  1.  $60^\circ$

2.  $40^\circ$

3.  $52^\circ$

4.  $50^\circ$

Question ID : 98958012241

Status : Not Attempted and Marked For Review

Chosen Option : --

Q.1 One tap can fill a tank in 3 hours and a leak can empty the tank in 5 hours. If the tap and the leak (which was half

22 closed) were left open, how long will it take for the tank to fill?

Ans  1.  $4\frac{2}{7}$  hours

2.  $7\frac{1}{2}$  hours

3.  $5\frac{1}{3}$  hours

4.  $6\frac{2}{3}$  hours

Question ID : 98958012229

Status : Answered

Chosen Option : 1

Q.1  $\frac{64}{25}$  converted to percentage is:

23

Ans  1. 25.6

2. 256

3. 0.256

4. 2.56

Question ID : 98958012219

Status : **Answered**  
Chosen Option : 2

Q.1  
24 Pipe A can fill a cistern in 4 hours and another pipe B is installed. Both the pipes together fill the cistern in  $2\frac{1}{2}$  hours.  
How long will it take for B alone to fill the cistern?

- Ans
- 1.  $6\frac{2}{3}$  hours
  - 2. 5 hours
  - 3.  $5\frac{1}{6}$  hours
  - 4.  $6\frac{3}{8}$  hours

Question ID : **98958012230**  
Status : **Answered**  
Chosen Option : 1

Q.1  
25 If the cost price of 4 chairs is equal to selling price of 3 chairs, then the profit or loss percentage is:

- Ans
- 1.  $33\frac{1}{3}\%$
  - 2. 20%
  - 3.  $16\frac{2}{3}\%$
  - 4. 25%

Question ID : **98958012218**  
Status : **Answered**  
Chosen Option : 1

Q.1  
26 A, B and C start walking together from a point. Their steps measure 42 cm, 56 cm and 64 cm respectively. What is the minimum distance they should walk so that each takes exact number of steps?

- Ans
- 1. 13.44 m
  - 2. 14.06 m
  - 3. 14.58 m
  - 4. 15.60 m

Question ID : **98958012211**  
Status : **Not Attempted and Marked For Review**  
Chosen Option : --

Q.1  
27 The students of a class donated ₹3,481 towards relief fund. Each student donated an amount equal to the number of students in the class. The number of students in the class is:

- Ans
- 1. 49
  - 2. 59
  - 3. 61
  - 4. 51

Question ID : **98958012208**  
Status : **Answered**  
Chosen Option : 2

Q.1  
28 The average of all prime numbers between 21 and 50 is(round off to one decimal number):

- Ans
- 1. 32.9
  - 2. 35.9

3. 33.7

4. 34.8

Question ID : 98958012215

Status : Answered

Chosen Option : 2

Q.1  
29 The area of a parallelogram is  $338 \text{ m}^2$ . If its altitude is twice the corresponding base, its base is:

Ans  1. 13

2. 14

3. 28

4. 26

Question ID : 98958012237

Status : Answered

Chosen Option : 4

Q.1  
30 A bought 38 kg rice @ ₹54.50/kg, 45 kg rice @ ₹62/kg and 55 kg rice @ ₹48/kg. He sold the mixture @ ₹65/kg. His profit or loss percentage is:

Ans  1. Loss 1.04

2. Profit 16.8

3. Loss 1.7

4. Profit 19.6

Question ID : 98958012222

Status : Not Attempted and Marked For Review

Chosen Option : --

Q.1  
31 The product of HCF and LCM of two numbers is 3321. If one of the numbers is 369, the HCF of the numbers is:

Ans  1. 3

2. 21

3. 9

4. 27

Question ID : 98958012210

Status : Answered

Chosen Option : 3

Q.1  
32 A and B can finish a work together in 30 days. B and C can finish the same work together in 24 days and A and C can finish the work together in 40 days. If all three work together, how long will it take them to complete the work?

Ans  1. 15 days

2. 10 days

3. 20 days

4. 5 days

Question ID : 98958012228

Status : Answered

Chosen Option : 3

Q.1  
33 In what time will a sum double itself at 8% p.a simple interest?

Ans  1. 5 years

2. 6 years
3. 8 years
4. 12.5 years

Question ID : 98958012225  
 Status : Answered  
 Chosen Option : 4

Q.1  
 34 If  $x - \frac{1}{x} = 3\sqrt{2}$ , then  $x^2 + \frac{1}{x^2}$  is equal to:

- Ans  1. 52
2. 56
3. 20
4. 46

Question ID : 98958012239  
 Status : Answered  
 Chosen Option : 3

Q.1  
 35 The number 45789 is divisible by which of the single digit numbers:

- Ans  1. Only by 9
2. Only by 3 and 9
3. Only by 3
4. Only by 3 and 7

Question ID : 98958012209  
 Status : Answered  
 Chosen Option : 3

Q.1  
 36  $(24 \div 6 - 2) + (3 \times 2 + 4)$  is equal to:

- Ans  1. 24
2. 16
3. 20
4. 12

Question ID : 98958012213  
 Status : Answered  
 Chosen Option : 4

Q.1  
 37 If  $5\cos\theta - 12\sin\theta = 0$ , the value of  $\frac{2\sin\theta + \cos\theta}{\cos\theta - \sin\theta}$  is:

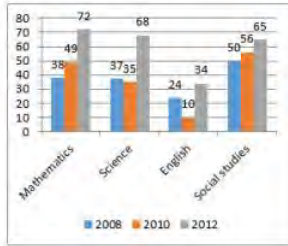
- Ans  1.  $1\frac{75}{119}$
2.  $3\frac{1}{7}$
3.  $2\frac{34}{35}$
4.  $3\frac{2}{3}$

Question ID : 98958012245



Status : **Answered**  
Chosen Option : **2**

**Q.1** The given bar chart shows number of marks scored by a student in each subject in three years:  
**38**



In the given bar-chart, if number of marks in Social Studies in year 2012 is 13% of the school strength, the number of students is:

- Ans**
- 1. 400
  - 2. 540
  - 3. 500
  - 4. 580

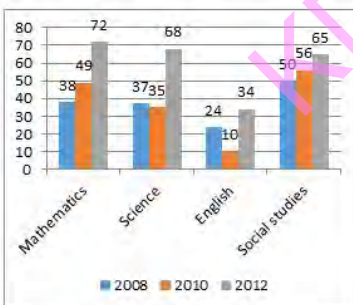
Question ID : **98958012251**  
Status : **Answered**  
Chosen Option : **3**

**Q.1** PA and PB are two tangents to a circle with centre O, from a point P outside the circle. A and B are points on the circle.  
**39** If  $\angle OAB = 35^\circ$ , then  $\angle APB$  is equal to:

- Ans**
- 1.  $35^\circ$
  - 2.  $70^\circ$
  - 3.  $25^\circ$
  - 4.  $20^\circ$

Question ID : **98958012242**  
Status : **Answered**  
Chosen Option : **2**

**Q.1** The given bar chart shows number of marks scored by a student in each subject in three years:  
**40**



In the given bar-chart, in which subject was the lowest marks scored in 2010?

- Ans**
- 1. Social studies
  - 2. Mathematics
  - 3. English
  - 4. Science

Question ID : **98958012249**  
Status : **Answered**  
Chosen Option : **3**

**Q.1** A train travels at a speed of 76 km/h. If it crosses a pole in 36 seconds, the length of the train is:  
**41**

- Ans  1. 720 m  
 2. 675 m  
 3. 760 m  
 4. 630 m

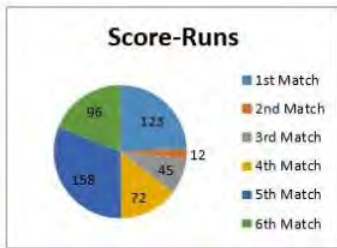
Question ID : 98958012231  
 Status : Answered  
 Chosen Option : 3

Q.1 42 A saves 12% of her income. If she spends ₹2,16,128, her total income is:

- Ans  1. ₹2,42,063  
 2. ₹2,45,600  
 3. ₹2,48,000  
 4. ₹2,43,560

Question ID : 98958012221  
 Status : Answered  
 Chosen Option : 2

Q.1 43 The given pie-chart shows runs scored by A in 6 matches.

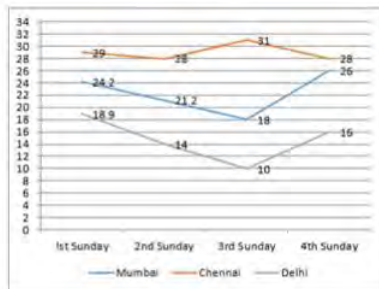


In the given pie-chart, what is the increase or decrease in score in match 4 as compared to match 2?

- Ans  1. +27  
 2. -27  
 3. -60  
 4. +60

Question ID : 98958012253  
 Status : Answered  
 Chosen Option : 4

Q.1 44 The line graph shows the temperature on four Sundays of three cities.



In the given line graph, what was the average temperature on the 3rd Sunday in all the three cities?

(rounded to first decimal)

- Ans  1. 24  
 2. 23

✓ 3. 19.7

✗ 4. 25.4

Question ID : 98958012256

Status : Answered

Chosen Option : 3

Q.1 If an airplane covers a distance of 980 km in 35 minutes, then what time it will take to cover a distance of 1470 km.  
45

Ans ✗ 1.  $\frac{1}{2}$  hour

✗ 2.  $1\frac{1}{8}$  hours

✓ 3.  $\frac{7}{8}$  hour

✗ 4.  $1\frac{1}{6}$  hours

Question ID : 98958012232

Status : Answered

Chosen Option : 3

Q.1 If  $(2x - 5)^3 + (x + 2)^3 + (3x - 9)^3 = (2x - 5)(3x - 9)(3x + 6)$ , then what is the value of  $x$ ?  
46

Ans ✗ 1. 7

✓ 2. 2

✗ 3. 18

✗ 4. 5

Question ID : 98958012238

Status : Not Attempted and Marked For Review

Chosen Option : --

Q.1 The average height of 12 students of a class is 132.5 cm. If one more student joins, the average height becomes 131.2 cm, the height of the new student is:  
47

Ans ✗ 1. 112.7 cm

✗ 2. 122.3 cm

✓ 3. 115.6 cm

✗ 4. 128.5 cm

Question ID : 98958012216

Status : Answered

Chosen Option : 3

Q.1 The liquid in a container is sufficient to paint an area of  $11.28 \text{ m}^2$ . How many boxes of dimension  $30 \text{ cm} \times 25 \text{ cm} \times 12 \text{ cm}$  can be painted with the liquid in this container?  
48

Ans ✓ 1. 40

✗ 2. 24

✗ 3. 32

✗ 4. 12

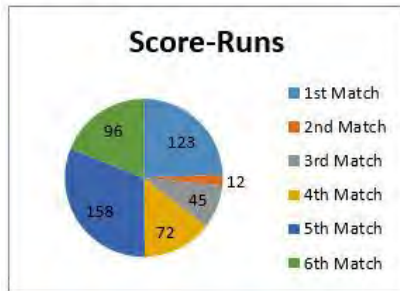
Question ID : 98958012234

Status : Not Answered

Chosen Option : --

Q.1

49 The given pie-chart shows runs scored by A in 6 matches.



In the given pie-chart, what is the average runs scored in all matches? (rounded off)

- Ans
- 1. 85
  - 2. 90
  - 3. 88
  - 4. 84

Question ID : 98958012252

Status : Answered

Chosen Option : 4

Q.1 Find the weight of a solid cylinder of height 35 cm and radius 14 cm, if the material of the cylinder weighs 8 gm/cm<sup>3</sup>.

50

- Ans
- 1. 172.48 kg
  - 2. 160 kg
  - 3. 177.44 kg
  - 4. 166 kg

Question ID : 98958012235

Status : Answered

Chosen Option : 1

Q.1 Select the most appropriate meaning of the given idiom.

51

It's Greek to me

- Ans
- 1. incomprehensible
  - 2. incredible
  - 3. intangible
  - 4. inevitable

Question ID : 98958011586

Status : Answered

Chosen Option : 1

Q.1 Select the most appropriate word for the given group of words.

52

a person who advocates complete political or social change

- Ans
- 1. fanatic
  - 2. hero
  - 3. radical
  - 4. leader

Question ID : 98958011589  
Status : Marked For Review  
Chosen Option : 1

Q.1 Select the antonym of the given word.

53

RESTRICTED

- Ans
- 1. banned
  - 2. barred
  - 3. unmanned
  - 4. unbounded

Question ID : 98958011579  
Status : Answered  
Chosen Option : 4

Q.1 Identify the segment in the sentence, which contains the grammatical error.

54

Though paper has been the dominant medium for print, the British parliament had managed valiantly to hold back the paper tide for over half a millennium.

- Ans
- 1. to hold back the paper tide
  - 2. Though paper has been
  - 3. Parliament had managed
  - 4. the dominant medium for print

Question ID : 98958011553  
Status : Answered  
Chosen Option : 2

Q.1 Identify the segment in the sentence, which contains the grammatical error.

55

In 2016, after some unseemly back-and-forth to the Commons and Lords, it was decided that Acts of Parliament should no longer be printed on calfskin.

- Ans
- 1. should no longer be printed on calfskin
  - 2. after some unseemly back-and-forth
  - 3. it was decided
  - 4. to the Commons and Lords

Question ID : 98958011552  
Status : Answered  
Chosen Option : 4

Q.1 Select the most appropriate option to substitute the underlined segment in the given sentence. If there is no need to substitute it, select No substitution required.

56

It makes no difference to overall health whether you lose weight slow or quick, according to new research by York University.

- Ans
- 1. No substitution required
  - 2. whether you lose weight slow or quickly
  - 3. whether you lose weight slowly or quickly
  - 4. whether you lose weight slowly or quick

Question ID : 98958011557  
Status : Answered  
Chosen Option : 3



Q.1  
57 Select the synonym of the given word.

CONTRAVENE

- Ans
- 1. brake
  - 2. broach
  - 3. flaunt
  - 4. breech

Question ID : 98958011576  
Status : Not Attempted and Marked For Review  
Chosen Option : --

Q.1  
58 Select the most appropriate words to fill in the blanks.

For years Indians looking for meaty \_\_\_\_\_ have been stuck with the \_\_\_\_\_ soya nuggets.

- Ans
- 1. substitutes; ubiquitous
  - 2. alternates; global
  - 3. Substitutes; regional
  - 4. alternative; zonal

Question ID : 98958011565  
Status : Answered  
Chosen Option : 1

Q.1  
59 Select the synonym of the given word.

LYRICAL

- Ans
- 1. brilliant
  - 2. musical
  - 3. prosaic
  - 4. overwhelming

Question ID : 98958011573  
Status : Marked For Review  
Chosen Option : 2

Q.1  
60 Select the most appropriate word for the given group of words.

an arrangement of flowers that is usually given as a present

- Ans
- 1. bouquet
  - 2. cluster
  - 3. wreath
  - 4. bunch

Question ID : 98958011590  
Status : Answered  
Chosen Option : 1

Q.1  
61

Select the most appropriate option to substitute the underlined segment in the given sentence. If there is no need to substitute it, select No substitution required.

We really need to look at interventions who focus in long-term weight management that can achieve sustained weight loss at the recommended one to two pounds per week.

- Ans
- 1. that focus on long-term
  - 2. No substitution required
  - 3. that focus with long-term
  - 4. whom focus on long-term

Question ID : 98958011561  
Status : Answered  
Chosen Option : 1

Comprehension:

KD JOB UPDATES

Read the following passage and answer the questions given after it.

Sedentary lifestyles are killing us – we need to build activity into our everyday lives, not just leave it for the gym. Google searches relating to physical fitness peak in January. Many people even trawl the web to find out about “desk exercises” and “workouts on the go” in case they are too busy to use their new gym memberships.

Our relationship with exercise is complicated. Reports from the UK and the US show it is something we persistently struggle with. As the new year rolls around, we anticipate having the drive to behave differently and become regular exercisers, even in the knowledge that we will probably fail to do so. Why do we want to exercise? What do we expect it to do for us? We all know we are supposed to be exercising, but hundreds of millions of us can't face actually doing it. It is just possible that the problem lies at the heart of the idea of exercise itself.

Exercise is movement of the muscles and limbs for a specific outcome, usually to enhance physical fitness. As such, for most of us, it is an optional addition to the working day – yet another item on a long list of responsibilities alongside the fulfilment of parental duties or earning money to put food on the table. But because the principal beneficiaries of exercises are we ourselves, it is one of the easiest chores to shirk. At the end of the working day, millions of us prefer to indulge in sedentary leisure activities instead of what we all think is good for us: a workout.

Fitness crazes are like diets: if any of them worked, there wouldn't be so many. *CrossFit*, the intensely physical, communal workout incorporating free weights, squats, pull-ups and so forth, is still less than 20 years old. Spin classes – vigorous group workouts on stationary bikes – have only been around for about 30. Aerobics was a craze about a decade before that, although many of its high-energy routines had already been around for a while. Before that, there was the jogging revolution, which began in the US in the early 1960s. *The Joggers Manual*, published in 1963 by the Oregon Heart Foundation, was a leaflet of about 200 words that sought to address the postwar panic about sedentary lifestyles by encouraging an accessible form of physical activity, explaining that “jogging is a bit more than a walk”. The jogging boom took a few years to get traction, hitting its stride in the mid- to late-80s, but it remains one of the most popular forms of exercise, now also in groups.

The exercise craze that dominated the 1950s was, oddly, not even an exercise. The vibrating exercise belt promised users could achieve effortless weight loss by having their midriffs violently jiggled. It didn't work, but you can still find similar machines available for purchase today.

SubQuestion No : 162

Q.1  
62 Why do most people make exercise their last priority?

Ans  1. It does not help in earning their livelihood.

2. It is an added responsibility besides looking after the family.

3. The main beneficiaries of exercise are people themselves.
4. They prefer to indulge in sedentary leisure activities.

Question ID : 98958011599  
Status : Answered  
Chosen Option : 4

Comprehension:

KD JOB UPDATES



Read the following passage and answer the questions given after it.

Sedentary lifestyles are killing us – we need to build activity into our everyday lives, not just leave it for the gym. Google searches relating to physical fitness peak in January. Many people even trawl the web to find out about “desk exercises” and “workouts on the go” in case they are too busy to use their new gym memberships.

Our relationship with exercise is complicated. Reports from the UK and the US show it is something we persistently struggle with. As the new year rolls around, we anticipate having the drive to behave differently and become regular exercisers, even in the knowledge that we will probably fail to do so. Why do we want to exercise? What do we expect it to do for us? We all know we are supposed to be exercising, but hundreds of millions of us can't face actually doing it. It is just possible that the problem lies at the heart of the idea of exercise itself.

Exercise is movement of the muscles and limbs for a specific outcome, usually to enhance physical fitness. As such, for most of us, it is an optional addition to the working day – yet another item on a long list of responsibilities alongside the fulfilment of parental duties or earning money to put food on the table. But because the principal beneficiaries of exercises are we ourselves, it is one of the easiest chores to shirk. At the end of the working day, millions of us prefer to indulge in sedentary leisure activities instead of what we all think is good for us: a workout.

Fitness crazes are like diets: if any of them worked, there wouldn't be so many. *CrossFit*, the intensely physical, communal workout incorporating free weights, squats, pull-ups and so forth, is still less than 20 years old. Spin classes – vigorous group workouts on stationary bikes – have only been around for about 30. Aerobics was a craze about a decade before that, although many of its high-energy routines had already been around for a while. Before that, there was the jogging revolution, which began in the US in the early 1960s. *The Joggers Manual*, published in 1963 by the Oregon Heart Foundation, was a leaflet of about 200 words that sought to address the postwar panic about sedentary lifestyles by encouraging an accessible form of physical activity, explaining that “jogging is a bit more than a walk”. The jogging boom took a few years to get traction, hitting its stride in the mid- to late-80s, but it remains one of the most popular forms of exercise, now also in groups.

The exercise craze that dominated the 1950s was, oddly, not even an exercise. The vibrating exercise belt promised users could achieve effortless weight loss by having their midriffs violently jiggled. It didn't work, but you can still find similar machines available for purchase today.

SubQuestion No : 163

Q.1  
63 Which of the following does not classify as an exercise?

- Ans
- 1. High-energy Aerobics routines
  - 2. Using midriff vibrating belt
  - 3. Workouts on stationary bikes



#### 4. Squats and pull-ups

Question ID : 98958011600

Status : Answered

Chosen Option : 2

##### Comprehension:

Read the following passage and answer the questions given after it.

Sedentary lifestyles are killing us – we need to build activity into our everyday lives, not just leave it for the gym. Google searches relating to physical fitness peak in January. Many people even trawl the web to find out about “desk exercises” and “workouts on the go” in case they are too busy to use their new gym memberships.

Our relationship with exercise is complicated. Reports from the UK and the US show it is something we persistently struggle with. As the new year rolls around, we anticipate having the drive to behave differently and become regular exercisers, even in the knowledge that we will probably fail to do so. Why do we want to exercise? What do we expect it to do for us? We all know we are supposed to be exercising, but hundreds of millions of us can't face actually doing it. It is just possible that the problem lies at the heart of the idea of exercise itself.

Exercise is movement of the muscles and limbs for a specific outcome, usually to enhance physical fitness. As such, for most of us, it is an optional addition to the working day – yet another item on a long list of responsibilities alongside the fulfilment of parental duties or earning money to put food on the table. But because the principal beneficiaries of exercises are we ourselves, it is one of the easiest chores to shirk. At the end of the working day, millions of us prefer to indulge in sedentary leisure activities instead of what we all think is good for us: a workout.

Fitness crazes are like diets: if any of them worked, there wouldn't be so many. *CrossFit*, the intensely physical, communal workout incorporating free weights, squats, pull-ups and so forth, is still less than 20 years old. Spin classes – vigorous group workouts on stationary bikes – have only been around for about 30. Aerobics was a craze about a decade before that, although many of its high-energy routines had already been around for a while. Before that, there was the jogging revolution, which began in the US in the early 1960s. *The Joggers Manual*, published in 1963 by the Oregon Heart Foundation, was a leaflet of about 200 words that sought to address the postwar panic about sedentary lifestyles by encouraging an accessible form of physical activity, explaining that “jogging is a bit more than a walk”. The jogging boom took a few years to get traction, hitting its stride in the mid- to late-80s, but it remains one of the most popular forms of exercise, now also in groups.

The exercise craze that dominated the 1950s was, oddly, not even an exercise. The vibrating exercise belt promised users could achieve effortless weight loss by having their midriffs violently jiggled. It didn't work, but you can still find similar machines available for purchase today.

SubQuestion No : 164

Q.1

64 Why do Google searches related to physical fitness peak in January?

- Ans
- 1. It is the time to renew gym membership.
  - 2. It is a common new year resolution.
  - 3. In the new year people want to look slim and trim.
  - 4. The cold weather encourages people to exercise.

Question ID : 98958011601

Status : Answered

Chosen Option : 2

Comprehension:

KD JOB UPDATES



Read the following passage and answer the questions given after it.

Sedentary lifestyles are killing us – we need to build activity into our everyday lives, not just leave it for the gym. Google searches relating to physical fitness peak in January. Many people even trawl the web to find out about “desk exercises” and “workouts on the go” in case they are too busy to use their new gym memberships.

Our relationship with exercise is complicated. Reports from the UK and the US show it is something we persistently struggle with. As the new year rolls around, we anticipate having the drive to behave differently and become regular exercisers, even in the knowledge that we will probably fail to do so. Why do we want to exercise? What do we expect it to do for us? We all know we are supposed to be exercising, but hundreds of millions of us can't face actually doing it. It is just possible that the problem lies at the heart of the idea of exercise itself.

Exercise is movement of the muscles and limbs for a specific outcome, usually to enhance physical fitness. As such, for most of us, it is an optional addition to the working day – yet another item on a long list of responsibilities alongside the fulfilment of parental duties or earning money to put food on the table. But because the principal beneficiaries of exercises are we ourselves, it is one of the easiest chores to shirk. At the end of the working day, millions of us prefer to indulge in sedentary leisure activities instead of what we all think is good for us: a workout.


Fitness crazes are like diets: if any of them worked, there wouldn't be so many. *CrossFit*, the intensely physical, communal workout incorporating free weights, squats, pull-ups and so forth, is still less than 20 years old. Spin classes – vigorous group workouts on stationary bikes – have only been around for about 30. Aerobics was a craze about a decade before that, although many of its high-energy routines had already been around for a while. Before that, there was the jogging revolution, which began in the US in the early 1960s. *The Joggers Manual*, published in 1963 by the Oregon Heart Foundation, was a leaflet of about 200 words that sought to address the postwar panic about sedentary lifestyles by encouraging an accessible form of physical activity, explaining that “jogging is a bit more than a walk”. The jogging boom took a few years to get traction, hitting its stride in the mid- to late-80s, but it remains one of the most popular forms of exercise, now also in groups.

The exercise craze that dominated the 1950s was, oddly, not even an exercise. The vibrating exercise belt promised users could achieve effortless weight loss by having their midriffs violently jiggled. It didn't work, but you can still find similar machines available for purchase today.

SubQuestion No : 165

Q.1  
65 The sentence – “Exercise is movement of the muscles and limbs for a specific outcome, usually to enhance physical fitness”

- Ans
- 1. defines exercise
  - 2. devalues exercise
  - 3. defends exercise

 4. describes exercise

Question ID : 98958011602

Status : Answered

Chosen Option : 4

Comprehension:

Read the following passage and answer the questions given after it.

Sedentary lifestyles are killing us – we need to build activity into our everyday lives, not just leave it for the gym. Google searches relating to physical fitness peak in January. Many people even trawl the web to find out about “desk exercises” and “workouts on the go” in case they are too busy to use their new gym memberships.

Our relationship with exercise is complicated. Reports from the UK and the US show it is something we persistently struggle with. As the new year rolls around, we anticipate having the drive to behave differently and become regular exercisers, even in the knowledge that we will probably fail to do so. Why do we want to exercise? What do we expect it to do for us? We all know we are supposed to be exercising, but hundreds of millions of us can't face actually doing it. It is just possible that the problem lies at the heart of the idea of exercise itself.

Exercise is movement of the muscles and limbs for a specific outcome, usually to enhance physical fitness. As such, for most of us, it is an optional addition to the working day – yet another item on a long list of responsibilities alongside the fulfilment of parental duties or earning money to put food on the table. But because the principal beneficiaries of exercises are we ourselves, it is one of the easiest chores to shirk. At the end of the working day, millions of us prefer to indulge in sedentary leisure activities instead of what we all think is good for us: a workout.

Fitness crazes are like diets: if any of them worked, there wouldn't be so many. *CrossFit*, the intensely physical, communal workout incorporating free weights, squats, pull-ups and so forth, is still less than 20 years old. Spin classes – vigorous group workouts on stationary bikes – have only been around for about 30. Aerobics was a craze about a decade before that, although many of its high-energy routines had already been around for a while. Before that, there was the jogging revolution, which began in the US in the early 1960s. *The Joggers Manual*, published in 1963 by the Oregon Heart Foundation, was a leaflet of about 200 words that sought to address the postwar panic about sedentary lifestyles by encouraging an accessible form of physical activity, explaining that “jogging is a bit more than a walk”. The jogging boom took a few years to get traction, hitting its stride in the mid- to late-80s, but it remains one of the most popular forms of exercise, now also in groups.

The exercise craze that dominated the 1950s was, oddly, not even an exercise. The vibrating exercise belt promised users could achieve effortless weight loss by having their midribs violently jiggled. It didn't work, but you can still find similar machines available for purchase today.

SubQuestion No : 166

Q.1



66 Which expression means the same as 'an intense and widely shared enthusiasm for something, especially one that is short-lived; a craze.'

- Ans
- 1. Mania
  - 2. Fad
  - 3. Phase
  - 4. Obsession

Question ID : 98958011603  
Status : Answered  
Chosen Option : 4

Q.1  
67 Select the wrongly spelt word.

- Ans
- 1. admiration
  - 2. adroit
  - 3. administration
  - 4. adreneline

Question ID : 98958011593  
Status : Answered  
Chosen Option : 4

Q.1  
68 Select the most appropriate word for the given group of words.

a person who has an unnatural anxiety about one's own health typically involving imagined symptoms of illness.

- Ans
- 1. nymphomaniac
  - 2. hypochondriac
  - 3. neurotic
  - 4. psychotic

Question ID : 98958011591  
Status : Answered  
Chosen Option : 2

Q.1  
69 Select the most appropriate meaning of the given idiom.

to give someone the cold shoulder

- Ans
- 1. ignore or show indifference
  - 2. deny someone comforting clothes
  - 3. serve cold meat to someone
  - 4. bury someone in freezing cold

Question ID : 98958011587  
Status : Answered  
Chosen Option : 1

Q.1  
70 Select the wrongly spelt word.

- Ans
- 1. ingratitude
  - 2. ingredeints



3. indigenous

4. engraving

Question ID : 98958011595  
Status : Answered  
Chosen Option : 2

Q.1 Select the antonym of the given word.

71

COMPROMISE

Ans  1. dissent

2. agreement

3. disturbance

4. treaty

Question ID : 98958011582  
Status : Answered  
Chosen Option : 1

Q.1 Select the synonym of the given word.

72

MEMOIR

Ans  1. diary

2. episode

3. anecdote

4. story

Question ID : 98958011575  
Status : Marked For Review  
Chosen Option : 1

Q.1 Identify the segment in the sentence, which contains the grammatical error.

73

The Natural History of Selborne, records the importance of the earthworm to soil and describe an England unspoiled by the Industrial Revolution.

Ans  1. describe an England

2. unspoiled by the Industrial Revolution

3. records the importance

4. of the earthworm to soil

Question ID : 98958011556  
Status : Answered  
Chosen Option : 1

Q.1 Identify the segment in the sentence, which contains the grammatical error.

74

It seems that authors' creativity is not restrict to their work and happily overflows into their names too.

Ans  1. happily overflows

2. authors' creativity

3. into their names too

4. restrict to their work

Question ID : 98958011554

Status : Marked For Review

Chosen Option : 1

Q.1  
75 Select the synonym of the given word.

EXASPERATING

- Ans
- 1. exhausting
  - 2. saddening
  - 3. exalting
  - 4. frustrating

Question ID : 98958011577

Status : Marked For Review

Chosen Option : 2

Q.1  
76 Select the most appropriate meaning of the given idiom.

put one's cards on the table

- Ans
- 1. to be able to continue
  - 2. to be honest
  - 3. to accept defeat
  - 4. to deal a game of cards

Question ID : 98958011584

Status : Marked For Review

Chosen Option : 1

Q.1 Select the most appropriate words to fill in the blanks.

77

Telemedicine is the delivery of clinical services across \_\_\_\_\_ and IT devices. It's a subset of a wider \_\_\_\_\_ care originally developed for doctors to be able to \_\_\_\_\_ patients living in rural and remote areas.

- Ans
- 1. telephone; virtual; diagnose
  - 2. telephones; actual; discharge
  - 3. telecoms; virtual; treat
  - 4. telecom; visual; admit

Question ID : 98958011566

Status : Answered

Chosen Option : 3

Q.1  
78 Select the synonym of the given word.

ENIGMATIC

- Ans
- 1. inquisitive
  - 2. resolute
  - 3. purgative
  - 4. mysterious

Question ID : 98958011574

Status : Answered

Chosen Option : 4

Q.1 79 Select the most appropriate word for the given group of words.

to send back a criminal or an unwanted person to the country of his/her origin.

- Ans
- 1. excavate
  - 2. exile
  - 3. export
  - 4. extradite

Question ID : 98958011592

Status : Marked For Review

Chosen Option : 2

Q.1 80 Select the most appropriate meaning of the given idiom.

be the Devil's advocate

- Ans
- 1. to present a counter argument just for the sake of it
  - 2. to present an argument in favor of a well-known evil man
  - 3. to represent an accused in a murder trial
  - 4. to represent the devil as an advocate in witch trials

Question ID : 98958011585

Status : Answered

Chosen Option : 2

#### Comprehension:

In the following passage some words have been deleted. Fill in the blanks with the help of the alternatives given. Select the most appropriate option for each number.

A massive fire in Chennai destroyed 184 cars (1) \_\_\_\_\_ to a private cab aggregator. (2) \_\_\_\_\_ blaze is suspected to have been triggered (3) \_\_\_\_\_ tall dried grass caught fire from a discarded (4) \_\_\_\_\_ cigarette butt, said a rescue services (5) \_\_\_\_\_.

SubQuestion No : 181

Q.1 81 Select the most appropriate option to fill in blank No.1.

- Ans
- 1. belonged
  - 2. belongs
  - 3. were belonging
  - 4. belonging

Question ID : 98958011568

Status : Answered

Chosen Option : 2

#### Comprehension:

In the following passage some words have been deleted. Fill in the blanks with the help of the alternatives given. Select the most appropriate option for each number.

A massive fire in Chennai destroyed 184 cars (1) \_\_\_\_\_ to a private cab aggregator. (2) \_\_\_\_\_ blaze is suspected to have been triggered (3) \_\_\_\_\_ tall dried grass caught fire from a discarded (4) \_\_\_\_\_ cigarette butt, said a rescue services (5) \_\_\_\_\_.

SubQuestion No : 182

Q.1  
82 Select the most appropriate option to fill in blank  
No.2.

- Ans
- 1. One
  - 2. The
  - 3. Some
  - 4. A

Question ID : 98958011569

Status : Answered

Chosen Option : 2

Comprehension:

In the following passage some words have been deleted. Fill in the blanks with the help of the alternatives given. Select the most appropriate option for each number.

A massive fire in Chennai destroyed 184 cars (1) \_\_\_\_\_ to a private cab aggregator. (2) \_\_\_\_\_ blaze is suspected to have been triggered (3) \_\_\_\_\_ tall dried grass caught fire from a discarded (4) \_\_\_\_\_ cigarette butt, said a rescue services (5) \_\_\_\_\_.

SubQuestion No : 183

Q.1  
83 Select the most appropriate option to fill in blank  
No.3.

- Ans
- 1. of
  - 2. until
  - 3. after
  - 4. by

Question ID : 98958011570

Status : Answered

Chosen Option : 4

Comprehension:

In the following passage some words have been deleted. Fill in the blanks with the help of the alternatives given. Select the most appropriate option for each number.

A massive fire in Chennai destroyed 184 cars (1) \_\_\_\_\_ to a private cab aggregator. (2) \_\_\_\_\_ blaze is suspected to have been triggered (3) \_\_\_\_\_ tall dried grass caught fire from a discarded (4) \_\_\_\_\_ cigarette butt, said a rescue services (5) \_\_\_\_\_.

SubQuestion No : 184

Q.1  
84 Select the most appropriate option to fill in blank  
No.4.



- Ans
- 1. smoking
  - 2. lighting
  - 3. firing
  - 4. smouldering

Question ID : 98958011571  
 Status : Answered  
 Chosen Option : 1

**Comprehension:**

In the following passage some words have been deleted. Fill in the blanks with the help of the alternatives given. Select the most appropriate option for each number.

A massive fire in Chennai destroyed 184 cars (1) \_\_\_\_\_ to a private cab aggregator. (2) \_\_\_\_\_ blaze is suspected to have been triggered (3) \_\_\_\_\_ tall dried grass caught fire from a discarded (4) \_\_\_\_\_ cigarette butt, said a rescue services (5) \_\_\_\_\_.

SubQuestion No : 185

Q.1  
85 Select the most appropriate option to fill in blank No.5.

- Ans
- 1. special
  - 2. victim
  - 3. official
  - 4. culprit

Question ID : 98958011572  
 Status : Answered  
 Chosen Option : 3

Q.1  
86 Select the most appropriate option to substitute the underlined segment in the given sentence. If there is no need to substitute it, select No substitution required.

A simple life of freedom and happiness is one of the more difficult thing to achieve.

- Ans
- 1. No substitution required
  - 2. one of the most difficult things to achieve.
  - 3. one of the most difficult thing to achieve.
  - 4. one of the more difficult things to achieve.

Question ID : 98958011559  
 Status : Answered  
 Chosen Option : 3

Q.1  
87 Select the most appropriate meaning of the given idiom.

get a taste of your own medicine

- Ans
- 1. be given the medicine meant for others
  - 2. be treated by the same doctor
  - 3. be given the same treatment that you have given to others
  - 4. make, taste and take medicines for others



Question ID : 98958011583

Status : Answered

Chosen Option : 3

Q.1  
88 Select the wrongly spelt word.

- Ans
- 1. existensial
  - 2. ecstatic
  - 3. extortion
  - 4. extensive

Question ID : 98958011597

Status : Answered

Chosen Option : 1

Q.1 Select the most appropriate words to fill in the blanks.

89

At the back of the eye there are light-sensitive \_\_\_\_\_ which connect to a small patch of brain tissue. They also \_\_\_\_\_ to areas of the brain that \_\_\_\_\_ mood and alertness.

- Ans
- 1. cells; link; adjust
  - 2. cells; join; adjust
  - 3. cells; link; regulate
  - 4. muscle; link; regulate

Question ID : 98958011563

Status : Answered

Chosen Option : 4

Q.1 Select the most appropriate option to substitute the underlined segment in the given sentence. If there is no need to substitute it, select No substitution required.

90

I sometimes pass a delivery man wheeling a large handcart of Japanese food. The cart bears a striking message: 'Creating a world where everyone believes in their own authenticity.'

- Ans
- 1. No substitution required
  - 2. Creating a world whereas everyone believes in their own authenticity
  - 3. Been created a world where everyone believes in their own authenticity
  - 4. Created a world where everyone believes in their own authenticity

Question ID : 98958011558

Status : Answered

Chosen Option : 2

Q.1 Select the antonym of the given word.

91

PERPETRATE

- Ans
- 1. prevent
  - 2. commit
  - 3. react
  - 4. perpetuate

Question ID : 98958011581

Status : **Not Attempted and Marked For Review**  
Chosen Option : --

Q.1 Select the most appropriate words to fill in the blanks.

92

People from \_\_\_\_\_ societies go to bed and wake up several hours earlier than people in \_\_\_\_\_ countries do and seem to sleep better than the \_\_\_\_\_.

- Ans
- 1. traditional; developed; later
  - 2. modern ; developed; latter
  - 3. modern; undeveloped; later
  - 4. traditional; developed; latter

Question ID : **98958011562**  
Status : **Answered**  
Chosen Option : **4**

Q.1 Select the wrongly spelt word.

93

- Ans
- 1. exclamation
  - 2. eccentricity
  - 3. exscitement
  - 4. expenditure

Question ID : **98958011594**  
Status : **Answered**  
Chosen Option : **3**

Q.1 Select the most appropriate option to substitute the underlined segment in the given sentence. If there is no need to substitute it, select No substitution required.

94

Just as technology has changed the way we shop, book a taxi, hold business meetings, and even find a parking spot, so too is it transforming the way we accessed healthcare, wherever we are in the world.

- Ans
- 1. so too was it transforming the way we accessed healthcare
  - 2. No substitution required
  - 3. so too is it transforming the way we access healthcare
  - 4. so too had it transformed the way we access healthcare

Question ID : **98958011560**  
Status : **Answered**  
Chosen Option : **3**

Q.1 Select the antonym of the given word.

95

RECOVERED

- Ans
- 1. lost
  - 2. last
  - 3. latest
  - 4. leased

Question ID : **98958011578**  
Status : **Answered**  
Chosen Option : **1**

Q.1  
96

Select the most appropriate words to fill in the blanks.

Even on an overcast winter's day, it is at least 10 times \_\_\_\_\_ outside than in a standard office. By \_\_\_\_\_ to work and getting outdoors at lunchtime, we can begin to reconnect with the light.

- Ans
- 1. brightest; walking
  - 2. brighter; walking
  - 3. brighter; walk
  - 4. bright; walk

Question ID : 98958011564

Status : Answered

Chosen Option : 4

Q.1  
97 Select the wrongly spelt word.

- Ans
- 1. furios
  - 2. frenzied
  - 3. freeze
  - 4. fractional

Question ID : 98958011596

Status : Answered

Chosen Option : 1

Q.1  
98 Select the antonym of the given word.

THREATEN

- Ans
- 1. criticize
  - 2. compete
  - 3. coax
  - 4. commend

Question ID : 98958011580

Status : Answered

Chosen Option : 3

Q.1  
99 Select the most appropriate word for the given group of words.

a table or flat surface where offerings are made to a deity

- Ans
- 1. sanctorum
  - 2. pew
  - 3. altar
  - 4. stone

Question ID : 98958011588

Status : Marked For Review

Chosen Option : 3

Q.2 Identify the segment in the sentence, which contains the grammatical error.

00

To be interested in the changing seasons is a happy state of mind than to be hopelessly in love with spring.

- Ans
- 1. To be interested
  - 2. a happy state of mind

3. hopelessly in love with spring

4. in the changing seasons

Question ID : **98958011555**

Status : **Answered**

Chosen Option : **3**

KD JOB UPDATES

## Recruitment of Sub-Inspector in Delhi Police, CAPFs and Assistant Sub-Inspector in CISF Examination, 2018

Roll No. :	
Registration No.	
Name :	
Exam Venue :	
Exam Time :	12:45 PM - 2:45 PM
Exam Date :	16/03/2019

Section : SI CPO

Q.1 If  $AT = 20$  and  $BEG = 70$ , then  $BANK = \underline{\hspace{2cm}}$ .

- Ans
- 1. 318
  - 2. 308
  - 3. 228
  - 4. 282

Question ID : 98958012075  
Status : Answered  
Chosen Option : 2

Q.2 Identify the number that does NOT belong in the given series.

5, 9, 17, 29, 55, 65

- Ans
- 1. 55
  - 2. 29
  - 3. 9
  - 4. 5

Question ID : 98958012078  
Status : Answered  
Chosen Option : 1

Q.3 Three of the following four numbers are alike in a certain way and one is different. Identify the different one.

- Ans
- 1. 2047
  - 2. 4702
  - 3. 6041
  - 4. 4306

Question ID : 98958012087  
Status : Answered  
Chosen Option : 3

Q.4



If a mirror is placed on the line MN, then which of the answer figures is the correct mirror image of the given figure?



Ans

1.



2.



3.



4.



Question ID : 98958012102  
Status : Answered  
Chosen Option : 4

Q.5 Select the Venn diagram that represents the correct relationship between the following classes.

Vegetables, Brinjal, Apple

Ans

1.



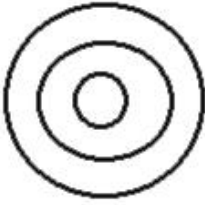
2.



3.



✗ 4.



Question ID : 98958012107

Status : Answered

Chosen Option : 3

Q.6 Select the set of numbers that is similar to the following set of numbers.

(18, 54, 36)

- Ans
- ✗ 1. (16, 40, 32)
  - ✗ 2. (10, 40, 20)
  - ✗ 3. (2, 6, 10)
  - ✓ 4. (8, 24, 16)

Question ID : 98958012088

Status : Answered

Chosen Option : 4

Q.7 Select the word-pair in which the two words are related in the same way as are the two words in the given word-pair.

Steel : Iron

- Ans
- ✗ 1. Chromium : Silver
  - ✓ 2. Brass : Copper
  - ✗ 3. Bronze : Iron
  - ✗ 4. Nickel : Tin

Question ID : 98958012068

Status : Answered

Chosen Option : 2

Q.8 उस विकल्प का चयन कीजिए जिसके शब्द-युग्म के बीच वही संबंध है जो निम्नलिखित शब्द-युग्म के बीच है।

हवाईजहाज : विमान घर

- Ans
- ✓ 1. कार : गैरेज
  - ✗ 2. खेत : अनाज
  - ✗ 3. वस्तुएं : भंडार
  - ✗ 4. घोड़ा : काठी

Question ID : 98958012069

Status : **Answered**  
Chosen Option : 1

Q.9 Which two numbers should be interchanged to make the following equation correct?

$$7 - 8 \div 4 + 5 \times 3 = 8 \times 3 + 6 \div 2 - 3$$

- Ans
- 1. 4 and 5
  - 2. 7 and 5
  - 3. 4 and 2
  - 4. 6 and 7

Question ID : **98958012090**  
Status : **Answered**  
Chosen Option : 2

Q.1 Select the correct alternative to indicate the arrangement of the following words in a logical and meaningful order.

- 1) Editor
- 2) Publisher
- 3) Author
- 4) Reader
- 5) Bookseller

- Ans
- 1. 3, 1, 2, 5, 4
  - 2. 4, 3, 1, 2, 5
  - 3. 1, 3, 2, 5, 4
  - 4. 3, 2, 1, 5, 4

Question ID : **98958012060**  
Status : **Answered**  
Chosen Option : 1

Q.1 If '×' stands for addition, '÷' stands for subtraction, '+' stands for multiplication and '-' stands for division, then what will be the value of the following expression?

$$26 \div 13 \times 8 + 6 - 2$$

- Ans
- 1. 17
  - 2. 47
  - 3. 27
  - 4. 37

Question ID : **98958012092**  
Status : **Answered**  
Chosen Option : 4

Q.1  
2

Two statements are given, followed by two conclusions I and II. Assuming these statements to be true, even if they seem to be at variance with commonly known facts, decide which of the given conclusions logically follow (s) from the statements.

Statements:

Some roads are metros.

Some metros are cars.

Conclusions:

I. All cars are either roads or metros.

II. Some cars are metros.

- Ans
- 1. Only conclusion I follows.
  - 2. Neither conclusion I nor II follows.
  - 3. Only conclusion II follows.
  - 4. Either conclusion I or II follows.

Question ID : 98958012077  
Status : Answered  
Chosen Option : 3

Q.1 Three of the following four words are alike in a certain way and one is different. Find the odd one out.  
3

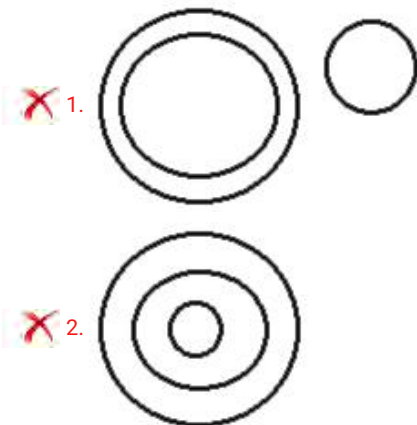
- Ans
- 1. Lion
  - 2. Whale
  - 3. Elephant
  - 4. Shark

Question ID : 98958012065  
Status : Answered  
Chosen Option : 4

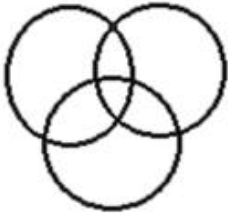
Q.1 Select the Venn diagram that represents the correct relationship between the following classes.  
4

Jaisalmer, Jaipur, Rajasthan

Ans



3.



4.



Question ID : 98958012106  
Status : Answered  
Chosen Option : 4

Q.1 Three of the following four number-pairs are alike in a certain way and one is different. Identify the different one.  
5

- Ans  1. 37 : 75  
 2. 29 : 59  
 3. 28 : 56  
 4. 26 : 53

Question ID : 98958012086  
Status : Answered  
Chosen Option : 3

Q.1 Select the option that is related to the third term in the same way as the second term is related to the first term.  
6

ADGJ : ZWTQ :: MPSV : \_\_\_\_\_

- Ans  1. NKHE  
 2. MKHE  
 3. NJGC  
 4. GJLM

Question ID : 98958012070  
Status : Answered  
Chosen Option : 1

Q.1 'Optimist' is related to 'Pessimist' in the same way as 'Cheerful' is related to '\_\_\_\_\_'.  
7

- Ans  1. Selfish  
 2. Beautiful  
 3. Ugly  
 4. Gloomy

Question ID : 98958012067  
Status : Answered  
Chosen Option : 4



Q.1 <sub>8</sub> Select the set of numbers that is similar to the following set of numbers.

(12, 37, 112)

- Ans  1. (15, 46, 139)  
 2. (7, 24, 73)  
 3. (13, 40, 118)  
 4. (9, 28, 83)

Question ID : 98958012089  
Status : Answered  
Chosen Option : 1

Q.1 <sub>9</sub> Select the number-pair in which the two numbers are related in the same way as are the two numbers of the given number pair.

13 : 174

- Ans  1. 15 : 224  
 2. 8 : 69  
 3. 14 : 200  
 4. 9 : 81

Question ID : 98958012082  
Status : Answered  
Chosen Option : 2

Q.2 <sub>0</sub> Three of the following four letter-clusters are alike in a certain way and one is different. Find the odd one out.

- Ans  1. KOTZ  
 2. DHMS  
 3. GIMP  
 4. FJOU

Question ID : 98958012062  
Status : Answered  
Chosen Option : 3

Q.2 <sub>1</sub> In a certain code language, SON is written as 345 and ROAM is written as 6412. How will RANSOM be written as in the same language?

- Ans  1. 615342  
 2. 651342  
 3. 615324  
 4. 612435

Question ID : 98958012074  
Status : Answered

Chosen Option : 1

Q.2 Three of the following four number-pairs are alike in a certain way and one is different. Identify the different one.

2

- Ans
- 1. 15 : 115
  - 2. 23 : 161
  - 3. 29 : 203
  - 4. 27 : 189

Question ID : 98958012085

Status : Answered

Chosen Option : 1

Q.2 Select the option that is related to the third term in the same way as the second term is related to the first term.

3

HVW : FTU :: DRS : \_\_\_\_\_

- Ans
- 1. FTU
  - 2. BOQ
  - 3. BPQ
  - 4. APQ

Question ID : 98958012071

Status : Answered

Chosen Option : 3

Q.2 Which number will replace the question mark (?) in the following series?

4

1, 4, 3, 4, 7, 7, 13, 13, ?

- Ans
- 1. 20
  - 2. 22
  - 3. 31
  - 4. 21

Question ID : 98958012079

Status : Answered

Chosen Option : 4

Q.2 Which number will replace the question mark (?) in the following series?

5

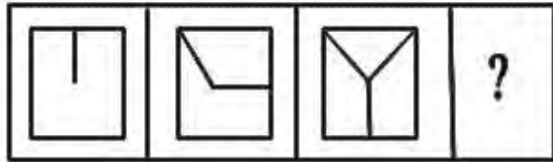
7, 14, 33, 70, 131, ?

- Ans
- 1. 190
  - 2. 218
  - 3. 131

✓ 4. 222

Question ID : 98958012080  
Status : Not Answered  
Chosen Option : --

Q.2  
6 Select the option that will come next in the given series.



Ans

- 1.
- 2.
- 3.
- 4.

Question ID : 98958012097  
Status : Answered  
Chosen Option : 3

Q.2  
7 Three of the following four letter-clusters are alike in a certain way and one is different. Find the odd one out.

- Ans
- 1. UFXC
  - 2. SHBY
  - 3. TGPK
  - 4. YAJQ

Question ID : 98958012063  
Status : Answered  
Chosen Option : 4

Q.2  
8

Select the correct alternative to indicate the arrangement of the following words in a logical and meaningful order.

- 1) Knee
- 2) Heel
- 3) Ankle
- 4) Thigh
- 5) Calf

- Ans
- 1. 2, 3, 1, 4, 5
  - 2. 2, 3, 1, 5, 4
  - 3. 4, 5, 3, 2, 1
  - 4. 2, 3, 5, 1, 4

Question ID : 98958012061

Status : Answered

Chosen Option : 4

Q.2 If sign '+' is interchanged with '-' and number '2' is interchanged with '6', which of the following equations would be correct?

9

- Ans
- 1.  $8 + 6 \div 2 = 8$
  - 2.  $2 + 8 \div 6 = 6$
  - 3.  $2 + 8 \div 2 = 8$
  - 4.  $2 + 6 \div 8 = 11$

Question ID : 98958012091

Status : Answered

Chosen Option : 1

Q.3 Choose the mirror image of the given word if the mirror is placed to the right of the word.

0

**MOUNTAIN**

- Ans
- 1. **NIATNUOM**
  - 2. **MOUNTAIN**
  - 3. **NIATIUOM**
  - 4. **NIATNUOM**

Question ID : 98958012103

Status : Answered

Chosen Option : 1

Q.3  
1

Select the option that will come next in the given series.

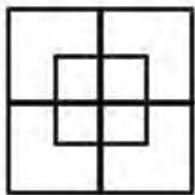


Ans

- 1.
- 2.
- 3.
- 4.

Question ID : 98958012096  
Status : Answered  
Chosen Option : 2

Q.3 How many squares are there in the following figure?



- Ans
- 1. 8
  - 2. 14
  - 3. 10
  - 4. 12

Question ID : 98958012098  
Status : Answered  
Chosen Option : 3

Q.3 If in a language, 'foot' is called 'elbow', 'elbow' is called 'ankle', 'ankle' is called 'palm', 'palm' is called 'finger' and 'finger' is called 'knee', then in that language, on what would one wear a ring?

- Ans
- 1. Ankle



- 2. Knee
- 3. Palm
- 4. Finger

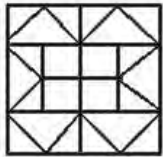
Question ID : 98958012072  
 Status : Answered  
 Chosen Option : 2

Q.3 Three of the following four number-pairs are alike in a certain way and one is different. Identify the different one.  
 4

- Ans
- 1. 9 : 729
  - 2. 13 : 2197
  - 3. 7 : 343
  - 4. 17 : 4814

Question ID : 98958012084  
 Status : Answered  
 Chosen Option : 4

Q.3 Select the option that is embedded in the following figure. (Rotation is not allowed)  
 5



- Ans
- 1.
  - 2.
  - 3.
  - 4.

Question ID : 98958012101  
 Status : Answered  
 Chosen Option : 3

Q.3  
 6

Two statements are given, followed by two conclusions I and II Assuming these statements to be true, even if they seem to be at variance with commonly known facts, decide which of the given conclusions logically follow(s) from the statements.

**Statements:**

No Tablet is lion.  
All lions are bells.

**Conclusions:**

- I. No bell is tablet.
- II. Some bells are lions.

- Ans
- 1. Only conclusion I follows.
  - 2. Both conclusions I and II follow.
  - 3. Only conclusion II follows.
  - 4. Neither conclusion I nor II follows.

Question ID : 98958012076  
Status : Answered  
Chosen Option : 3

Q.3  
7 Which letter-cluster will replace the question mark (?) in the following series?

IVM, HWL, GXK, FYJ, ?

- Ans
- 1. EZH
  - 2. EAH
  - 3. EZI
  - 4. DZI

Question ID : 98958012059  
Status : Answered  
Chosen Option : 3

Q.3  
8 Which letter will replace the question mark (?) in the following series?

B, E, H, K, N, ?

- Ans
- 1. O
  - 2. P
  - 3. Q
  - 4. N

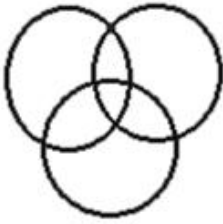
Question ID : 98958012058  
Status : Answered  
Chosen Option : 3

Q.3  
9 Select the Venn diagram that represents the correct relationship between the following classes.

Fathers, Doctors, Singers

Ans

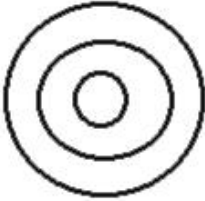
✓ 1.



✗ 2.



✗ 3.



✗ 4.



Question ID : 98958012105  
Status : Answered  
Chosen Option : 1

Q.4 Select the number-pair in which the two numbers are related in the same way as are the two numbers of the given number pair.

68 : 30

Ans

✗ 1. 350 : 49

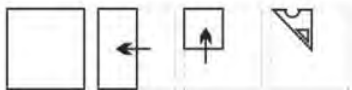
✗ 2. 222 : 131

✗ 3. 125 : 27

✓ 4. 520 : 350

Question ID : 98958012083  
Status : Not Answered  
Chosen Option : --

Q.4 The sequence of folding a piece of square paper and the manner in which the folded paper has been cut is shown. How would this paper look when unfolded?



Ans

✗ 1.





Question ID : 98958012104  
Status : Answered  
Chosen Option : 4

Q.4 Three of the following four words are alike in a certain way and one is different. Find the odd one out.

2

- Ans  1. Potato  
 2. Garlic  
 3. Tomato  
 4. Ginger

Question ID : 98958012064  
Status : Answered  
Chosen Option : 3

Q.4 A man is facing towards the east. He then turns  $45^\circ$  anti-clockwise, again  $180^\circ$  anti-clockwise and then  $225^\circ$  clockwise.

3 In which direction is he facing now?

- Ans  1. West  
 2. North  
 3. South  
 4. East

Question ID : 98958012094  
Status : Answered  
Chosen Option : 4

Q.4 If in a certain code, EDITION is written as VWRGRLM, then which word will be coded as SLMVHGB?

4

- Ans  1. HAUGHTY  
 2. HONESTY  
 3. AMNESTY  
 4. EDITORS

Question ID : 98958012073  
Status : Answered  
Chosen Option : 2

Q.4 'Belgium' is related to 'Europe' in the same way as 'Japan' is related to '\_\_\_\_\_'.  
5

- Ans  1. Africa

- 2. Australia
- 3. Asia
- 4. Europe

Question ID : 98958012066  
 Status : Answered  
 Chosen Option : 3

Q.4 From his house, Avinash went to Kapil's house situated 500 m towards the north-east of his own house. From there, both of them went to Varun's house situated 400 m towards the south of Kapil's house. What is the shortest distance between Avinash's current location and his location at the beginning?

- Ans
- 1. 900 m
  - 2. 400 m
  - 3. 300 m
  - 4. 500 m

Question ID : 98958012093  
 Status : Answered  
 Chosen Option : 3

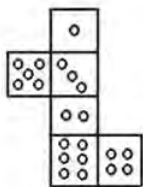
Q.4 Select the option that is related to the third number in the same way as the second number is related to the first number.

23 : 138 :: 17 : \_\_\_\_\_

- Ans
- 1. 96
  - 2. 102
  - 3. 346
  - 4. 56

Question ID : 98958012081  
 Status : Answered  
 Chosen Option : 2

Q.4 If the following figure is folded to form a cube, how many dots would appear on the face opposite the face bearing four dots?

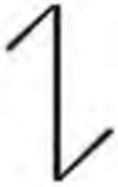


- Ans
- 1. 5
  - 2. 3
  - 3. 6
  - 4. 2

Question ID : 98958012099  
 Status : Answered  
 Chosen Option : 1

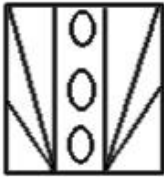


Q.4  
9 Select the option in which the given figure is embedded.



Ans

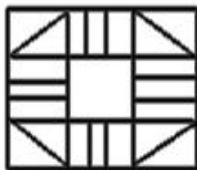
1.



2.



3.



4.

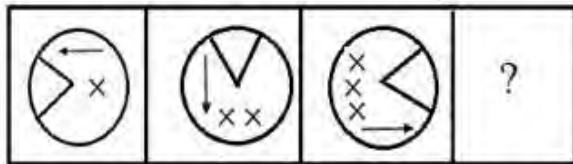


Question ID : 98958012100

Status : Answered

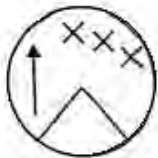
Chosen Option : 2

Q.5  
0 Select the option that will come next in the given series.



Ans

1.





Question ID : 98958012095

Status : Answered

Chosen Option : 4

Q.5  
1 Which of the following would you associate with the word 'dioptré'?

- Ans
- 1. Urology
  - 2. Ophthalmology
  - 3. Neurology
  - 4. Oncology

Question ID : 98958011011

Status : Answered

Chosen Option : 2

Q.5  
2 \_\_\_\_\_ fabric from Madhya Pradesh is registered with a GI tag.

- Ans
- 1. Pembrothi
  - 2. Chanderi
  - 3. Bhagalpuri
  - 4. Sholapuri

Question ID : 98958011016

Status : Answered

Chosen Option : 3

Q.5  
3 Which of the following is NOT a nationalised bank?

- Ans
- 1. South Indian Bank
  - 2. Syndicate Bank
  - 3. Canara Bank
  - 4. Vijaya Bank

Question ID : 98958010999  
Status : Not Answered  
Chosen Option : --

Q.5  
4 Which of the following is NOT a national political party?

- Ans
- 1. Nationalist Congress Party
  - 2. Bhartiya Janata Party
  - 3. United Democratic Party
  - 4. Indian National Congress

Question ID : 98958011035  
Status : Answered  
Chosen Option : 3

Q.5  
5 'Expectation is the root of all heartache' is a quote by \_\_\_\_\_.

- Ans
- 1. William Shakespeare
  - 2. Dalai Lama
  - 3. Mahavir
  - 4. Buddha

Question ID : 98958011031  
Status : Answered  
Chosen Option : 2

Q.5  
6 Considered one of the best in India, Temi Tea garden is the only tea estate in the state of:

- Ans
- 1. West Bengal
  - 2. Sikkim
  - 3. Assam
  - 4. Odisha

Question ID : 98958011017  
Status : Not Answered  
Chosen Option : --

Q.5  
7 Which renowned tabla player's son is also a famous tabla player who has collaborated with international bands?

- Ans
- 1. Ustad Bismillah Khan
  - 2. Ustad Amjad Ali
  - 3. Ustad Allah Rakha
  - 4. Ustad Rashid Khan

Question ID : 98958011028  
Status : Answered  
Chosen Option : 4

Q.5

8 Who was the first Indian woman to win an Olympic medal?

- Ans  1. Karnam Malleswari  
 2. Saina Nehwal  
 3. Mary Kom  
 4. Sakshi Malik

Question ID : 98958011041  
Status : Answered  
Chosen Option : 1

Q.5 \_\_\_\_\_ was honoured with the "Outstanding Parliamentarian Award" in 2017.

- Ans  1. Hukum Dev Narayan  
 2. Bhartruhari Mahtab  
 3. Ghulam Nabi Azad  
 4. Dinesh Trivedi

Question ID : 98958011039  
Status : Not Answered  
Chosen Option : --

Q.6 \_\_\_\_\_ is the biography of Sachin Tendulkar.

- Ans  1. The Test of My Life  
 2. Playing to Win  
 3. Playing It My Way  
 4. Ace Against Odds

Question ID : 98958011033  
Status : Answered  
Chosen Option : 3

Q.6 In humans, each cell normally contains \_\_\_\_\_ pairs of chromosomes.

- Ans  1. 22  
 2. 24  
 3. 23  
 4. 21

Question ID : 98958011005  
Status : Not Answered  
Chosen Option : --

Q.6 Mangal Pandey was hanged in 1857 for attacking the British officers in:

- Ans  1. Allahabad  
 2. Benaras

3. Calcutta  
 4. Barrackpore

Question ID : 98958011022  
Status : Answered  
Chosen Option : 4

Q.6  
3 Who discovered radium?

- Ans  1. Abdus Salam  
 2. Alexander Fleming  
 3. Pierre and Marie Currie  
 4. Ronald Ross

Question ID : 98958011008  
Status : Answered  
Chosen Option : 3

Q.6  
4 Who is the second woman Speaker of the Lok Sabha?

- Ans  1. Smriti Irani  
 2. Nirmala Sitharaman  
 3. Meira Kumar  
 4. Sumitra Mahajan

Question ID : 98958011034  
Status : Answered  
Chosen Option : 4

Q.6  
5 India celebrates National Engineer's Day on September 15, which is the birth anniversary of:

- Ans  1. Veeru Shahastrabuddhi  
 2. Mokshagundam Visvesvaraya  
 3. E. Sreedharan  
 4. Shiva Ayyadurai

Question ID : 98958011009  
Status : Answered  
Chosen Option : 2

Q.6  
6 \_\_\_\_\_ was the first President of the Bhartiya Janata Party.

- Ans  1. Kushabhau Thakre  
 2. Atal Bihari Vajpayee  
 3. Lal Krishna Advani  
 4. Murli Manohar Joshi

Question ID : 98958011038



Status : **Answered**  
Chosen Option : 4

Q.6  
7 Nepa Nagar in Madhya Pradesh is known for:

- Ans
- 1. Steel Mills
  - 2. Pottery
  - 3. Sugar Mills
  - 4. Newsprint Factory

Question ID : 98958011019  
Status : **Not Answered**  
Chosen Option : --

Q.6  
8 'All the world's a stage, And all the men and women merely players' – is a phrase from the play:

- Ans
- 1. Macbeth
  - 2. Julius Ceaser
  - 3. The Merchant of Venice
  - 4. As You Like It

Question ID : 98958011030  
Status : **Not Answered**  
Chosen Option : --

Q.6  
9 The Thimithi festival in Tamil Nadu is celebrated in the honor of:

- Ans
- 1. Padmavati
  - 2. Sita
  - 3. Draupadi
  - 4. Surpanakha

Question ID : 98958010998  
Status : **Not Answered**  
Chosen Option : --

Q.7  
0 Security Printing and Minting Corporation of India Limited (SPMCIL) was established in:

- Ans
- 1. 2001
  - 2. 2005
  - 3. 2003
  - 4. 2006

Question ID : 98958011002  
Status : **Not Answered**  
Chosen Option : --

Q.7  
1 Penicillin, one of the world's first antibiotics, was discovered by:

Ans

- 1. Marie Curie
- 2. Alexander Fleming
- 3. Alexander Graham Bell
- 4. Pierre Curie

Question ID : 98958011007  
Status : Answered  
Chosen Option : 2

Q.7  
2 The Wright brothers completed the world's first successful controlled powered flight in:

- Ans
- 1. 1908
  - 2. 1909
  - 3. 1911
  - 4. 1903

Question ID : 98958011006  
Status : Answered  
Chosen Option : 4

Q.7  
3 The Bahujan Samaj Party was formed in:

- Ans
- 1. 1988
  - 2. 1984
  - 3. 1976
  - 4. 1967

Question ID : 98958011037  
Status : Answered  
Chosen Option : 2

Q.7  
4 Which of the following has an odometer?

- Ans
- 1. Water heater
  - 2. Car
  - 3. Blood pressure monitoring device
  - 4. Air pump

Question ID : 98958011013  
Status : Answered  
Chosen Option : 2

Q.7  
5 The \_\_\_\_\_ period has been described as the 'golden age' of Indian history.

- Ans
- 1. Mughal
  - 2. Maratha
  - 3. Gupta
  - 4. Buddhist

Question ID : 98958011026

Status : Answered

Chosen Option : 3

Q.7 Which of the following is NOT a printing press of the Security Printing and Minting Corporation of India Limited (SPMCIL)?

- Ans
- 1. Bank Note Press
  - 2. Bank Security Press
  - 3. Currency Note Press
  - 4. Security Printing Press

Question ID : 98958011003

Status : Answered

Chosen Option : 4

Q.7 The Sanskrit phrase "Atithi Devo Bhava" means:

- Ans
- 1. I salute you
  - 2. The guest is God
  - 3. Good day
  - 4. See you soon

Question ID : 98958010996

Status : Answered

Chosen Option : 2

Q.7 Which Indian State/Union Territory has the shortest coastline?

- Ans
- 1. Gujarat
  - 2. Maharashtra
  - 3. Puducherry
  - 4. Tamil Nadu

Question ID : 98958011018

Status : Answered

Chosen Option : 3

Q.7 Who among the following is the highest-rated visually impaired chess player in India?

- Ans
- 1. Darpan Inani
  - 2. Baskaran Adhiban
  - 3. Krishnan Sasikiran
  - 4. Pentala Harikrishna

Question ID : 98958011040

Status : Answered

Chosen Option : 1

Q.8 \_\_\_\_\_ was officially acknowledged as the most recorded artist in music history by the Guinness Book of World Records in 2011.

- Ans
- 1. Mariah Carey
  - 2. Asha Bhosle
  - 3. Lata Mangeshkar
  - 4. Beyonce

Question ID : 98958011029  
Status : Answered  
Chosen Option : 1

Q.8 Which Gharana of classical singing did late Pandit Bhimsen Joshi belong to?

- Ans
- 1. Etawah
  - 2. Malhar
  - 3. Kirana
  - 4. Dhrupad

Question ID : 98958010997  
Status : Not Answered  
Chosen Option : --

Q.8 As of January 2019 \_\_\_\_\_ was the longest serving Chief Minister of Gujarat.

- Ans
- 1. Keshubhai Patel
  - 2. Narendra Modi
  - 3. Madhav Singh Solanki
  - 4. Chimanbhai Patel

Question ID : 98958011024  
Status : Answered  
Chosen Option : 3

Q.8 Ohm's Law states that:

- Ans
- 1. Electric current = Voltage / Resistance
  - 2. Power = Voltage + Current
  - 3. Power = Voltage × Current
  - 4. Electric current = Resistance / Voltage

Question ID : 98958011010  
Status : Answered  
Chosen Option : 1

Q.8 The Test of My Life is an autobiography of:

- Ans
- 1. Yuvraj Singh

- 2. Sachin Tendulkar
- 3. MS Dhoni
- 4. Gautam Gambhir

Question ID : 98958011042  
Status : Answered  
Chosen Option : 1

Q.8  
5 The names of Wright brothers credited with inventing the aeroplane were:

- Ans
- 1. William and Oliver
  - 2. William and Orville
  - 3. Wilbur and Orville
  - 4. Wilbur and Oliver

Question ID : 98958011004  
Status : Answered  
Chosen Option : 3

Q.8  
6 As on December 12, 2018 The Nationalist Congress Party was led by:

- Ans
- 1. Sudhakar Reddy
  - 2. Sharad Pawar
  - 3. Rahul Gandhi
  - 4. Sitaram Yechury

Question ID : 98958011036  
Status : Answered  
Chosen Option : 2

Q.8  
7 Kanishka was a \_\_\_\_\_ king.

- Ans
- 1. Kushan
  - 2. Gupta
  - 3. Maurya
  - 4. Chola

Question ID : 98958011027  
Status : Answered  
Chosen Option : 1

Q.8  
8 'Sardeshmukhi' in the Maratha regime was a:

- Ans
- 1. Designation equivalent to Peshwa
  - 2. A coin during the Maratha regime
  - 3. Tax levied on revenue
  - 4. Name given to Shivaji



Question ID : 98958011023  
Status : Not Answered  
Chosen Option : --

Q.8  
9 \_\_\_\_\_ is the stigma of *Crocus Sativus* L.

- Ans
- 1. Saffron
  - 2. Turmeric
  - 3. Artichoke
  - 4. Ginger

Question ID : 98958011015  
Status : Answered  
Chosen Option : 1

Q.9  
0 What is known as Hunter's Moon in the West, is called as \_\_\_\_\_ in India.

- Ans
- 1. Pausha Purnima
  - 2. Magha Purnima
  - 3. Chaitra Purnima
  - 4. Kartik Purnima

Question ID : 98958010994  
Status : Not Answered  
Chosen Option : --

Q.9  
1 Which of the following states is NOT famous for the Bhut Jolokia pepper?

- Ans
- 1. Odisha
  - 2. Nagaland
  - 3. Manipur
  - 4. Assam

Question ID : 98958011021  
Status : Not Answered  
Chosen Option : --

Q.9  
2 Inertia is proportional to:

- Ans
- 1. Mass
  - 2. Weight
  - 3. Length
  - 4. Height

Question ID : 98958011014  
Status : Answered  
Chosen Option : 1

Q.9

3 Fulminology is the study of:

- Ans
- 1. Volcanic eruptions
  - 2. Lightening
  - 3. Natural gases
  - 4. Atmosphere

Question ID : 98958011012  
Status : Not Answered  
Chosen Option : --

Q.9  
4 The \_\_\_\_\_ is a tax on production/manufacture of goods within the country.

- Ans
- 1. Sales tax
  - 2. Excise duty
  - 3. Service tax
  - 4. Customs duty

Question ID : 98958011001  
Status : Answered  
Chosen Option : 2

Q.9  
5 Devanagari evolved from the \_\_\_\_\_ script.

- Ans
- 1. Brahmi
  - 2. Inuktikut
  - 3. Hebrew
  - 4. Kana

Question ID : 98958010995  
Status : Answered  
Chosen Option : 1

Q.9  
6 \_\_\_\_\_ won a gold medal by setting a world record score in the men's skeet final event of the 8th Asian Shotgun Championship held in Kuwait in December 2018.

- Ans
- 1. Saeed Al Maktoum
  - 2. Angad Vir Singh Bajwa
  - 3. Vijay Kumar
  - 4. Jitu Rai

Question ID : 98958011043  
Status : Answered  
Chosen Option : 2

Q.9  
7 Which Indian state has the maximum number of sea ports?

- Ans
- 1. Tamil Nadu
  - 2. Maharashtra

- 3. Gujarat
- 4. Karnataka

Question ID : 98958011020  
Status : Answered  
Chosen Option : 1

Q.9 The Mughal empire reached its greatest extent under:

- Ans
- 1. Jahangir
  - 2. Shah Jahan
  - 3. Akbar
  - 4. Aurangzeb

Question ID : 98958011025  
Status : Answered  
Chosen Option : 3

Q.9 \_\_\_\_\_ means the minimum lending rate which is determined by the Reserve Bank of India (RBI) and no bank is allowed to lend funds below this rate.

- Ans
- 1. Cash reserve ratio
  - 2. Base rate
  - 3. Repo rate
  - 4. Marginal cost

Question ID : 98958011000  
Status : Answered  
Chosen Option : 3

Q.1 This contemporary Indian dancer who merged Kathak and Kathakali with other dance forms has been awarded the Sangeet Natak Akademi Award in 1996 and Padma Shri in 2007. His/her name is:

- Ans
- 1. Birju Maharaj
  - 2. Jailal Misra
  - 3. Astad Deboo
  - 4. Uday Shankar

Question ID : 98958011032  
Status : Not Answered  
Chosen Option : --

Q.1 If  $x - \frac{1}{x} = 2\sqrt{2}$ , then  $x^2 + \frac{1}{x^2}$  is equal to:

- Ans
- 1. 16
  - 2. 12
  - 3. 11
  - 4. 10

Question ID : 98958012289  
Status : Answered  
Chosen Option : 4

Q.1  
02 2.4 converted to percentage is:

- Ans
- 1. 0.24
  - 2. 24
  - 3. 240
  - 4. 2.4

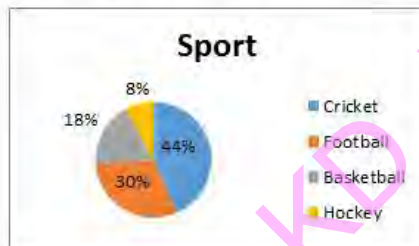
Question ID : 98958012269  
Status : Answered  
Chosen Option : 3

Q.1  
03 A can do a work in 30 days, B can do the same work in 48 days. After working alone for 20 days A left and B started working, how long will B take to complete the work?

- Ans
- 1. 24 days
  - 2. 28 days
  - 3. 38 days
  - 4. 16 days

Question ID : 98958012278  
Status : Answered  
Chosen Option : 4

Q.1  
04 The given pie-chart shows favourite sport of students of a school.



In the given pie-chart, if there were 1280 students in all, how many liked football?

- Ans
- 1. 102
  - 2. 550
  - 3. 230
  - 4. 384

Question ID : 98958012302  
Status : Answered  
Chosen Option : 4

Q.1  
05 The sides of a triangle are in the ratio 3 : 2 : 4 and the perimeter is 72 cm. The sides are:

- Ans
- 1. 24, 16, 32

2. 48, 24, 12

3. 36, 24, 12

4. 36, 18, 9

Question ID : 98958012294

Status : Answered

Chosen Option : 1

Q.1  
06 What percent of 2.4 m is 3.2 cm?

Ans  1. 75%

2. 7.5%

3.  $1000\frac{1}{3}\%$

4.  $13\frac{1}{3}\%$

Question ID : 98958012270

Status : Answered

Chosen Option : 1

Q.1  
07 A shopkeeper buys a book for ₹2,500 and marks its price at 15% above cost. He allows a discount of ₹345. The discount percentage is:

Ans  1. 10

2. 12

3. 11

4. 13

Question ID : 98958012268

Status : Answered

Chosen Option : 2

Q.1  
08 A sum at a simple interest of 8% p.a. becomes  $\frac{7}{5}$  of itself in how many years?

Ans  1. 5

2.  $2\frac{1}{2}$

3.  $3\frac{1}{2}$

4. 2

Question ID : 98958012276

Status : Answered

Chosen Option : 1

Q.1  
09 PA and PB are two tangents to a circle with centre O, from a point P outside the circle. A and B are points on the circle. If  $\angle OAB = 38^\circ$ , then  $\angle APB$  is equal to:

Ans  1.  $25^\circ$

2.  $35^\circ$



3. 20°

4. 76°

Question ID : 98958012292

Status : Answered

Chosen Option : 4

Q.1  
10 The largest number of four digits that is exactly divisible by 15, 21 and 30 is:

Ans  1. 9840

2. 9910

3. 9830

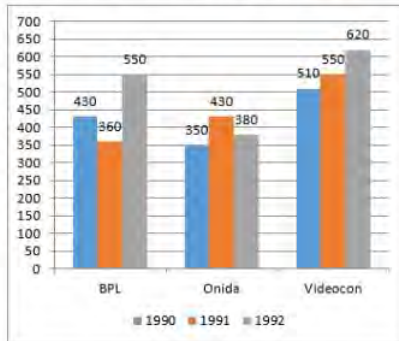
4. 9870

Question ID : 98958012261

Status : Answered

Chosen Option : 4

Q.1  
11 The given bar chart, shows the sales (in thousands) for sets of televisions of three companies in three years.



In the given bar-chart, what is a difference between the average sales of televisions A and B for 3 years?

Ans  1. 78

2. 56

3. 104

4. 60

Question ID : 98958012300

Status : Answered

Chosen Option : 4

Q.1  
12 Two pipes can fill a cistern in 72 and 90 minutes respectively. If both the pipes are left open how long will it take for the cistern to be half full?

Ans  1. 40 minutes

2. 24 minutes

3. 48 minutes

4. 20 minutes

Question ID : 98958012280

Status : Answered

Chosen Option : 4

Q.1 13 A watch was sold at a profit of 10%. Had it been sold at ₹77 more the profit percent would have been 12%. The cost price of the watch is:

- Ans
- 1. ₹3,760
  - 2. ₹3,850
  - 3. ₹3,945
  - 4. ₹3,900

Question ID : 98958012272  
Status : Answered  
Chosen Option : 2

Q.1 14 Find the cost of carpeting a room which is 11 m long and 6 m broad by a carpet which is 60 cm broad at the rate of ₹112.50 per meter.

- Ans
- 1. ₹12,375
  - 2. ₹13,280
  - 3. ₹11,695
  - 4. ₹12,040

Question ID : 98958012285  
Status : Answered  
Chosen Option : 1

Q.1 15 A trader allows a discount of 8% on marked price. If the selling price is ₹667, the discount in rupees is:

- Ans
- 1. ₹47
  - 2. ₹54
  - 3. ₹58
  - 4. ₹43

Question ID : 98958012267  
Status : Answered  
Chosen Option : 3

Q.1 16 A field is 119 m × 18 m in dimension. A tank 17 m × 6 m × 3 m is dug out in the middle and the soil removed is evenly spread over the remaining part of the field. The increase in level on the remaining part of the field is:

- Ans
- 1. 14 cm
  - 2. 13 cm
  - 3. 15 cm
  - 4. 12 cm

Question ID : 98958012283  
Status : Marked For Review  
Chosen Option : 1

Q.1 17 Divide ₹8,288 between A, B and C such that the proportion of their shares is 5 : 7 : 9. The share of C is:

- Ans
- 1. ₹2,032

2. ₹3,552

3. ₹3,872

4. ₹2,612

Question ID : 98958012273

Status : Answered

Chosen Option : 2

Q.1 18 If 15 men can do a piece of work in 14 days, how many men will be needed to do the work in 30 days?

Ans  1. 8

2. 10

3. 7

4. 9

Question ID : 98958012277

Status : Answered

Chosen Option : 3

Q.1 19 The interest on ₹24,000 in 2 years compounded annually when the rates are 8% p.a and 10% p.a for two successive years is:

Ans  1. ₹3,994

2. ₹4,512

3. ₹5,040

4. ₹5,866

Question ID : 98958012275

Status : Answered

Chosen Option : 2

Q.1 20  $15 - \{5 + 24 \div (3 \times 9 - 15)\}$  is equal to:

Ans  1. -2

2.  $11\frac{1}{3}$

3.  $6\frac{1}{4}$

4. 8

Question ID : 98958012262

Status : Answered

Chosen Option : 4

Q.1 21 The angle of elevation of a flying drone from a point on the ground is  $60^\circ$ . After flying for 5 seconds the angle of elevation drops to  $30^\circ$ . If the drone is flying horizontally at a constant height of  $1000\sqrt{3}$  m, the distance travelled by the drone is:

Ans  1. 2000 m

2. 1000 m

3. 3000 m

4. 4000 m

Question ID : 98958012297  
Status : Answered  
Chosen Option : 1

Q.1 An oil merchant has 3 varieties of oil of volumes 432, 594 and 702 litres respectively. The number of cans of equal size  
22 that would be required to fill the oil separately is:

- Ans  1. 13, 15, 17  
 2. 8, 11, 13  
 3. 8, 13, 15  
 4. 6, 9, 11

Question ID : 98958012260  
Status : Answered  
Chosen Option : 2

Q.1 The table below shows the admission and transfer in standards 1-3 of a school.  
23

Std	2015			2016	
	Existing	Admission	Transfer	Admission	Transfer
1	232	12	8	23	36
2	241	6	11	15	10
3	248	16	13	21	24

In the given table, in Standard 1, how many students were there at the end of year 2016?

- Ans  1. 223  
 2. 228  
 3. 236  
 4. 232

Question ID : 98958012305  
Status : Answered  
Chosen Option : 1

Q.1 The average of squares of numbers 1 to 5 is:  
24

- Ans  1. 11  
 2. 5  
 3. 8  
 4. 9

Question ID : 98958012265  
Status : Answered  
Chosen Option : 1

Q.1 210102 can be divided exactly by:  
25

- Ans  1. 7  
 2. 3  
 3. 4

4. 8

Question ID : 98958012259  
Status : Answered  
Chosen Option : 2

Q.1  
26 A pipe can fill a tank in 4 hours and a leak at the bottom can empty that full tank in 6 hours. If after the tank is  $\frac{1}{3}$  full, the leak is completely closed, how much time from beginning will it take for the tank to get filled completely?

- Ans
- 1. 12 hours
  - 2. 4 hours
  - 3. 9 hours
  - 4.  $\frac{20}{3}$  hours

Question ID : 98958012279  
Status : Answered  
Chosen Option : 4

Q.1  
27 In an examination, Shreya score 84 out of 90 in Mathematics, 45 out of 50 in Science, 23 out of 25 in Computer Science and 68 out of 80 in English. In which subject did Shreya score the highest percentage?

- Ans
- 1. Mathematics
  - 2. English
  - 3. Science
  - 4. Computer Science

Question ID : 98958012271  
Status : Answered  
Chosen Option : 1

Q.1  
28  $(-4) \times \{1020 \div 85 \times 3 - 22\}$  is equal to:

- Ans
- 1. -402
  - 2. -56
  - 3. 912
  - 4. 72

Question ID : 98958012263  
Status : Answered  
Chosen Option : 2

Q.1  
29 The value of  $\cos^2 45^\circ + \sin^2 30^\circ - \sin^2 60^\circ$  is equal to:

- Ans
- 1.  $\frac{3}{2}$
  - 2.  $\frac{1}{2}$
  - 3. 0
  - 4. 1



Question ID : 98958012296  
Status : Answered  
Chosen Option : 3

Q.1 30 A, B and C are partners in a firm sharing profit in the ratio of 3 : 4 : 5. If they set aside 4% of the profits as emergency fund and shared the rest of the profit and B gets his share of profit as ₹1,81,400, the amount of profit set aside for emergency fund is:

- Ans
- 1. ₹27,845
  - 2. ₹18,140
  - 3. ₹22,675
  - 4. ₹24,500

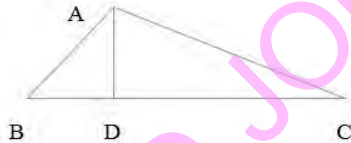
Question ID : 98958012274  
Status : Answered  
Chosen Option : 3

Q.1 31 If  $(x-2)^3 + (x-3)^3 + (x-10)^3 = (x-2)(x-3)(3x-30)$ , then what is the value of  $x$ ?

- Ans
- 1. 7
  - 2. 5
  - 3. 18
  - 4. 3

Question ID : 98958012288  
Status : Answered  
Chosen Option : 2

Q.1 32



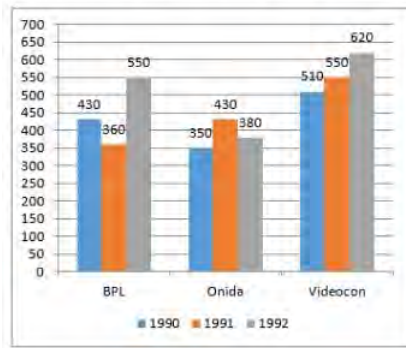
In the triangle given above  $\angle ADB=90^\circ$ ,  $\angle ABC=45^\circ$ ,  $AD=10$  cm,  $AC=20$  cm. The length of BC is:

- Ans
- 1. 10 cm
  - 2. 27.32 cm
  - 3. 18.42 cm
  - 4. 14.14 cm

Question ID : 98958012293  
Status : Answered  
Chosen Option : 2

Q.1 33

The given bar chart, shows the sales (in thousands) for sets of televisions of three companies in three years.



In the given bar-chart, if profit earned per television by C in 1992 was ₹825, the total profit earned was:

- Ans
- 1. ₹51150 lakhs
  - 2. ₹5115 lakhs
  - 3. ₹511.5 lakhs
  - 4. ₹51.15 lakhs

Question ID : 98958012301

Status : Answered

Chosen Option : 3

Q.1 A gardener planted 1936 saplings in a garden such that there were as many rows of saplings as the columns. The number of rows planted is:

- Ans
- 1. 46
  - 2. 44
  - 3. 48
  - 4. 42

Question ID : 98958012258

Status : Answered

Chosen Option : 2

Q.1 A boy walks 15 m in 7 seconds and then walks back in 5 seconds. His average speed (in m/s) is:

- Ans
- 1. 6
  - 2. 2.5
  - 3. 3.25
  - 4. 4

Question ID : 98958012266

Status : Answered

Chosen Option : 2

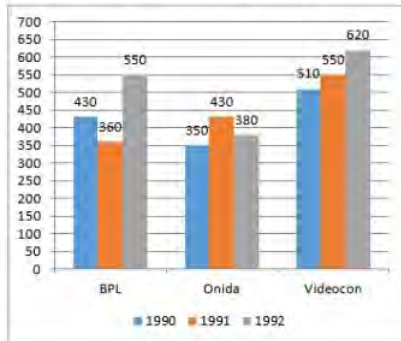
Q.1 If  $a^3 + b^3 = 432$  and  $a + b = 12$ , then  $(a + b)^2 - 3ab$  is equal to:

- Ans
- 1. 42
  - 2. 52
  - 3. 36

4. 38

Question ID : 98958012290  
Status : Answered  
Chosen Option : 3

Q.1 The given bar chart, shows the sales (in thousands) for sets of televisions of three companies in three years.  
37



In the given bar-chart, what is the ratio of television sales between A in year 1992 and C in year 1991?

- Ans  1. 1 : 1  
 2. 1 : 2  
 3. 2 : 1  
 4. 1 : 3

Question ID : 98958012299  
Status : Answered  
Chosen Option : 1

Q.1 A swimming pool is 40 m in length, 30 m in breadth and 2.2 m in depth. The cost of cementing its floor and the four sides at ₹25/m<sup>2</sup> is:  
38

- Ans  1. ₹43,980  
 2. ₹37,540  
 3. ₹34,260  
 4. ₹37,700

Question ID : 98958012287  
Status : Answered  
Chosen Option : 4

Q.1 The value of  $\cot^2 A - \frac{1}{\sin^2 A}$  is equal to:  
39

- Ans  1. 0  
 2. -1  
 3. -2  
 4. 1

Question ID : 98958012295  
Status : Answered  
Chosen Option : 2

Q.1 A river is 3 m deep and 36 m wide which flows at the rate of 5 km/h in to the sea. The volume of water that runs into the sea per minute is:

- Ans
- 1. 8300 m<sup>3</sup>
  - 2. 9000 m<sup>3</sup>
  - 3. 7600 m<sup>3</sup>
  - 4. 6400 m<sup>3</sup>

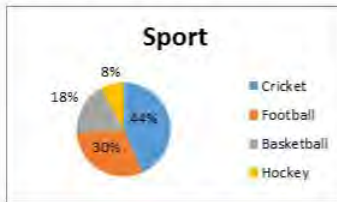
Question ID : 98958012286  
Status : Answered  
Chosen Option : 2

Q.1 A part of the journey is covered in 31.5 minutes at 80 km/h and the remaining part in 16 minutes at 75 km/h. The total distance of the journey is:

- Ans
- 1. 45 km
  - 2. 38 km
  - 3. 62 km
  - 4. 54 km

Question ID : 98958012282  
Status : Answered  
Chosen Option : 3

Q.1 The given pie-chart shows favourite sport of students of a school.



In the given pie-chart, what is the difference in percentage between liking for football and basketball?

- Ans
- 1. 10
  - 2. 8
  - 3. 13
  - 4. 12

Question ID : 98958012304  
Status : Answered  
Chosen Option : 4

Q.1 A girl 1.2 m tall can just see the sun over a 3.62 m tall wall which is 2.42 m away from her. The angle of elevation of the sun is:

- Ans
- 1. 60°
  - 2. 30°
  - 3. 90°
  - 4. 45°

Question ID : 98958012298

Status : Answered  
Chosen Option : 4

Q.1 44 The table below shows the admissions and transfers in standards 1-3 of a school.

Std	2015			2016	
	Existing	Admission	Transfer	Admission	Transfer
1	232	12	8	23	36
2	241	6	11	15	10
3	248	16	13	21	24

In the given table, what was the total strength in Standards 1-3 at the end of 2015?

- Ans  1. 723  
 2. 721  
 3. 710  
 4. 704

Question ID : 98958012307  
Status : Answered  
Chosen Option : 1

Q.1 45 ABCD is a cyclic quadrilateral such that AB is a diameter of the circle circumscribing it and angle ADC =  $144^\circ$ . Then angle BAC is equal to: ( $\pi = \frac{22}{7}$ )

- Ans  1.  $60^\circ$   
 2.  $150^\circ$   
 3.  $54^\circ$   
 4.  $40^\circ$

Question ID : 98958012291  
Status : Answered  
Chosen Option : 3

Q.1 46 Which least number should be added to 1000 so that the number obtained is exactly divisible by 37?

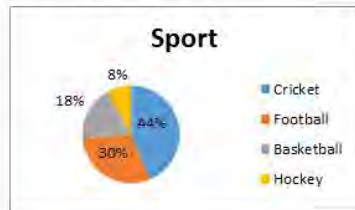
- Ans  1. 1  
 2. 25  
 3. 36  
 4. 13

Question ID : 98958012264  
Status : Answered  
Chosen Option : 1

Q.1 47



The given pie-chart shows favourite sport of students of a school.



In the given pie-chart, if the school strength was 2500, how many liked cricket more than hockey?

- Ans
- 1. 1075
  - 2. 504
  - 3. 900
  - 4. 750

Question ID : 98958012303  
 Status : Answered  
 Chosen Option : 3

Q.1 48 A rectangular solid is 20 cm long and 12 cm wide. If its volume is  $2160 \text{ cm}^3$ , the height is:

- Ans
- 1. 11 cm
  - 2. 10 cm
  - 3. 12 cm
  - 4. 9 cm

Question ID : 98958012284  
 Status : Answered  
 Chosen Option : 4

Q.1 49 The table below shows the admission and transfer in standards 1-3 of a school.

Std	2015			2016	
	Existing	Admission	Transfer	Admission	Transfer
1	232	12	8	23	36
2	241	6	11	15	10
3	248	16	13	21	24

In the given table, what was the difference between admission and transfer in standard 3 in year 2016?

- Ans
- 1. 3
  - 2. 9
  - 3. 8
  - 4. 5

Question ID : 98958012306  
 Status : Answered  
 Chosen Option : 1

Q.1 50 A train 100 m long running at uniform speed crosses a station which is 500 m long in 25 seconds. How long will it take for the train to pass a station that is 380 m long?

- Ans
- 1. 21 seconds
  - 2. 20 seconds
  - 3. 19 seconds

4. 22 seconds

Question ID : 98958012281

Status : Answered

Chosen Option : 2

Q.1 51 Select the most appropriate option to substitute the underlined segment in the given sentence. If there is no need to substitute it, select No substitution required.

A third of us are feeling compelled to check our phones in the middle of the night.

- Ans
- 1. A third among us feeling compelled to check our phones
  - 2. A third of us feel compelled to check our phones
  - 3. No substitution required
  - 4. A third of us feel compelled checking our phones

Question ID : 98958011613

Status : Answered

Chosen Option : 2

Q.1 52 Select the word, which means the same as the group of words given.

A harsh chaotic mixture of sounds

- Ans
- 1. consonance
  - 2. dissonance
  - 3. cacophony
  - 4. euphony

Question ID : 98958011644

Status : Answered

Chosen Option : 3

Q.1 53 Identify the segment in the sentence, which contains the grammatical error.

Scientists have found that life was creeping and crawling about the Earth 1.5 billion years early than previously thought.

- Ans
- 1. previously thought
  - 2. 1.5 billion years early than
  - 3. Scientists have found
  - 4. about the Earth

Question ID : 98958011606

Status : Answered

Chosen Option : 4

Q.1 54 Select the wrongly spelt word.

- Ans
- 1. horrible
  - 2. heiress
  - 3. hospitallity

4. hostility

Question ID : 98958011646  
Status : Answered  
Chosen Option : 3

Q.1  
55 Select the synonym of the given word.

DETRACTORS

- Ans  1. devotees  
 2. reviewers  
 3. critics  
 4. admirers

Question ID : 98958011625  
Status : Answered  
Chosen Option : 3

Q.1  
56 Select the synonym of the given word.

IMMINENT

- Ans  1. important  
 2. forthcoming  
 3. immature  
 4. truthful

Question ID : 98958011627  
Status : Answered  
Chosen Option : 2

Comprehension:

Read the following passage and answer the questions given after it. We often worry about lying awake in the middle of the night - but it could be good for you. A growing body of evidence from both science and history suggests that the eight-hour sleep may be unnatural. In the early 1990s, psychiatrist Thomas Wehr conducted an experiment in which a group of people were plunged into darkness for 14 hours every day for a month. It took some time for their sleep to regulate but by the fourth week the subjects had settled into a very distinct sleeping pattern. They slept first for four hours, then woke for one or two hours before falling into a second four-hour sleep. Though sleep scientists were impressed by the study, among the general public the idea that we must sleep for eight consecutive hours persists.

In 2001, historian Roger Ekirch of Virginia Tech published a seminal paper, drawn from 16 years of research, revealing a wealth of historical evidence that humans used to sleep in two distinct chunks. Roger Ekirch says a 1595 engraving by Jan Saenredam is evidence of activity at night. His book *At Day's Close: Night in Times Past*, published four years later, unearths more than 500 references to a segmented sleeping pattern - in diaries, court records, medical books and literature, from Homer's *Odyssey* to an anthropological account of modern tribes in Nigeria.

Much like the experience of Wehr's subjects, these references describe a first sleep which began about two hours after dusk, followed by waking period of one or two hours and then a second sleep. "It's not just the number of references - it is the way they refer to it, as if it was common knowledge," Ekirch says. During this waking period people were quite active. They often got up, went to the toilet or smoked tobacco and some even visited neighbors. Most people stayed in bed, read, wrote and often prayed. Countless prayer manuals from the late 15th century offered special prayers for the hours in between sleeps. Ekirch found that references to the first and second sleep started to disappear during the late 17th Century. This started among the urban upper classes in northern Europe and over the course of the next 200 years filtered down to the rest of Western society. By the 1920s the idea of a first and second sleep had receded entirely from our social consciousness. He attributes the initial shift to improvements in street lighting, domestic lighting and a surge in coffee houses - which were sometimes open all night. As the night became a place for legitimate activity and as that activity increased, the length of time people could dedicate to rest dwindled.

SubQuestion No : 157

Q.1  
57 The above passage \_\_\_\_\_ that an eight-hour sleep is natural.

- Ans
- 1. confirms the myth
  - 2. elaborates the myth
  - 3. promotes the myth
  - 4. examines the myth



## Comprehension:

Read the following passage and answer the questions given after it. We often worry about lying awake in the middle of the night - but it could be good for you. A growing body of evidence from both science and history suggests that the eight-hour sleep may be unnatural. In the early 1990s, psychiatrist Thomas Wehr conducted an experiment in which a group of people were plunged into darkness for 14 hours every day for a month. It took some time for their sleep to regulate but by the fourth week the subjects had settled into a very distinct sleeping pattern. They slept first for four hours, then woke for one or two hours before falling into a second four-hour sleep. Though sleep scientists were impressed by the study, among the general public the idea that we must sleep for eight consecutive hours persists.

In 2001, historian Roger Ekirch of Virginia Tech published a seminal paper, drawn from 16 years of research, revealing a wealth of historical evidence that humans used to sleep in two distinct chunks. Roger Ekirch says a 1595 engraving by Jan Saenredam is evidence of activity at night. His book *At Day's Close: Night in Times Past*, published four years later, unearths more than 500 references to a segmented sleeping pattern - in diaries, court records, medical books and literature, from Homer's *Odyssey* to an anthropological account of modern tribes in Nigeria.

Much like the experience of Wehr's subjects, these references describe a first sleep which began about two hours after dusk, followed by waking period of one or two hours and then a second sleep. "It's not just the number of references - it is the way they refer to it, as if it was common knowledge," Ekirch says. During this waking period people were quite active. They often got up, went to the toilet or smoked tobacco and some even visited neighbors. Most people stayed in bed, read, wrote and often prayed. Countless prayer manuals from the late 15th century offered special prayers for the hours in between sleeps. Ekirch found that references to the first and second sleep started to disappear during the late 17th Century. This started among the urban upper classes in northern Europe and over the course of the next 200 years filtered down to the rest of Western society. By the 1920s the idea of a first and second sleep had receded entirely from our social consciousness. He attributes the initial shift to improvements in street lighting, domestic lighting and a surge in coffee houses - which were sometimes open all night. As the night became a place for legitimate activity and as that activity increased, the length of time people could dedicate to rest dwindled.

SubQuestion No : 158

Q.1  
58 What did the experiment conducted by Thomas Wehr prove?

- Ans
- ✗ 1. It brought into question that sleeping for four consecutive hours is necessary.
  - ✓ 2. It proved sleeping for eight consecutive hours is not a norm.



3. It established that when the nights are longer, people slept in two distinct chunks.
4. It proved that all people slept in two distinct chunks of four hours.

Question ID : 98958011652

Status : Answered

Chosen Option : 4

**Comprehension:**

Read the following passage and answer the questions given after it.

We often worry about lying awake in the middle of the night - but it could be good for you. A growing body of evidence from both science and history suggests that the eight-hour sleep may be unnatural.

In the early 1990s, psychiatrist Thomas Wehr conducted an experiment in which a group of people were plunged into darkness for 14 hours every day for a month. It took some time for their sleep to regulate but by the fourth week the subjects had settled into a very distinct sleeping pattern. They slept first for four hours, then woke for one or two hours before falling into a second four-hour sleep. Though sleep scientists were impressed by the study, among the general public the idea that we must sleep for eight consecutive hours persists.

In 2001, historian Roger Ekirch of Virginia Tech published a seminal paper, drawn from 16 years of research, revealing a wealth of historical evidence that humans used to sleep in two distinct chunks. Roger Ekirch says a 1595 engraving by Jan Saenredam is evidence of activity at night. His book *At Day's Close: Night in Times Past*, published four years later, unearths more than 500 references to a segmented sleeping pattern - in diaries, court records, medical books and literature, from Homer's *Odyssey* to an anthropological account of modern tribes in Nigeria.

Much like the experience of Wehr's subjects, these references describe a first sleep which began about two hours after dusk, followed by waking period of one or two hours and then a second sleep. "It's not just the number of references - it is the way they refer to it, as if it was common knowledge," Ekirch says. During this waking period people were quite active. They often got up, went to the toilet or smoked tobacco and some even visited neighbors. Most people stayed in bed, read, wrote and often prayed. Countless prayer manuals from the late 15th century offered special prayers for the hours in between sleeps. Ekirch found that references to the first and second sleep started to disappear during the late 17th Century. This started among the urban upper classes in northern Europe and over the course of the next 200 years filtered down to the rest of Western society. By the 1920s the idea of a first and second sleep had receded entirely from our social consciousness. He attributes the initial shift to improvements in street lighting, domestic lighting and a surge in coffee houses - which were sometimes open all night. As the night became a place for legitimate activity and as that activity increased, the length of time people could dedicate to rest dwindled.

SubQuestion No : 159

59 Roger Ekirch indicated that \_\_\_\_\_.

- Ans
- 1. sleeping for eight consecutive hours is a modern standard for sleep.
  - 2. a segmented sleeping pattern was an established common habit in nations with long winters.
  - 3. a segmented sleeping pattern was a historically established common old habit.
  - 4. the practice of sleeping for eight consecutive hours was popularized by epics

Question ID : 98958011653

Status : Answered

Chosen Option : 3

Comprehension:

KD JOB UPDATES



Read the following passage and answer the questions given after it.

We often worry about lying awake in the middle of the night - but it could be good for you. A growing body of evidence from both science and history suggests that the eight-hour sleep may be unnatural.

In the early 1990s, psychiatrist Thomas Wehr conducted an experiment in which a group of people were plunged into darkness for 14 hours every day for a month. It took some time for their sleep to regulate but by the fourth week the subjects had settled into a very distinct sleeping pattern. They slept first for four hours, then woke for one or two hours before falling into a second four-hour sleep. Though sleep scientists were impressed by the study, among the general public the idea that we must sleep for eight consecutive hours persists.

In 2001, historian Roger Ekirch of Virginia Tech published a seminal paper, drawn from 16 years of research, revealing a wealth of historical evidence that humans used to sleep in two distinct chunks. Roger Ekirch says a 1595 engraving by Jan Saenredam is evidence of activity at night. His book *At Day's Close: Night in Times Past*, published four years later, unearths more than 500 references to a segmented sleeping pattern - in diaries, court records, medical books and literature, from Homer's *Odyssey* to an anthropological account of modern tribes in Nigeria.

Much like the experience of Wehr's subjects, these references describe a first sleep which began about two hours after dusk, followed by waking period of one or two hours and then a second sleep. "It's not just the number of references - it is the way they refer to it, as if it was common knowledge," Ekirch says. During this waking period people were quite active. They often got up, went to the toilet or smoked tobacco and some even visited neighbors. Most people stayed in bed, read, wrote and often prayed. Countless prayer manuals from the late 15th century offered special prayers for the hours in between sleeps. Ekirch found that references to the first and second sleep started to disappear during the late 17th Century. This started among the urban upper classes in northern Europe and over the course of the next 200 years filtered down to the rest of Western society. By the 1920s the idea of a first and second sleep had receded entirely from our social consciousness. He attributes the initial shift to improvements in street lighting, domestic lighting and a surge in coffee houses - which were sometimes open all night. As the night became a place for legitimate activity and as that activity increased, the length of time people could dedicate to rest dwindled.

SubQuestion No : 160

Q.1  
60 Which of the following options is NOT true with reference to the segmented sleeping pattern?

- Ans
- 1. People were physically active.
  - 2. People were socially active.
  - 3. People prayed actively.
  - 4. People visited all-night coffee shops.

Question ID : 98958011654

Status : Answered

## Comprehension:

Read the following passage and answer the questions given after it.

We often worry about lying awake in the middle of the night - but it could be good for you. A growing body of evidence from both science and history suggests that the eight-hour sleep may be unnatural.

In the early 1990s, psychiatrist Thomas Wehr conducted an experiment in which a group of people were plunged into darkness for 14 hours every day for a month. It took some time for their sleep to regulate but by the fourth week the subjects had settled into a very distinct sleeping pattern. They slept first for four hours, then woke for one or two hours before falling into a second four-hour sleep. Though sleep scientists were impressed by the study, among the general public the idea that we must sleep for eight consecutive hours persists.

In 2001, historian Roger Ekirch of Virginia Tech published a seminal paper, drawn from 16 years of research, revealing a wealth of historical evidence that humans used to sleep in two distinct chunks. Roger Ekirch says a 1595 engraving by Jan Saenredam is evidence of activity at night. His book *At Day's Close: Night in Times Past*, published four years later, unearths more than 500 references to a segmented sleeping pattern - in diaries, court records, medical books and literature, from Homer's *Odyssey* to an anthropological account of modern tribes in Nigeria.

Much like the experience of Wehr's subjects, these references describe a first sleep which began about two hours after dusk, followed by waking period of one or two hours and then a second sleep. "It's not just the number of references - it is the way they refer to it, as if it was common knowledge," Ekirch says. During this waking period people were quite active. They often got up, went to the toilet or smoked tobacco and some even visited neighbors. Most people stayed in bed, read, wrote and often prayed. Countless prayer manuals from the late 15th century offered special prayers for the hours in between sleeps. Ekirch found that references to the first and second sleep started to disappear during the late 17th Century. This started among the urban upper classes in northern Europe and over the course of the next 200 years filtered down to the rest of Western society. By the 1920s the idea of a first and second sleep had receded entirely from our social consciousness. He attributes the initial shift to improvements in street lighting, domestic lighting and a surge in coffee houses - which were sometimes open all night. As the night became a place for legitimate activity and as that activity increased, the length of time people could dedicate to rest dwindled.

SubQuestion No : 161

Q.1  
61 What caused the idea of a first and second sleep to entirely recede from our social consciousness?

- Ans
- 1. Industrialization and introduction of night shifts
  - 2. All-night coffee shops
  - 3. A group of rich people defying sleep



✓ 4. An active night life facilitated by artificial lighting

Question ID : 98958011655

Status : Answered

Chosen Option : 4

Q.1 62 Select the word, which means the same as the group of words given.

the hard remains of a prehistoric animal or plant that are found inside a rock.

- Ans
- ✓ 1. fossil
  - ✗ 2. ruins
  - ✗ 3. relics
  - ✗ 4. vestiges

Question ID : 98958011642

Status : Answered

Chosen Option : 1

Q.1 63 Select the most appropriate option to substitute the underlined segment in the given sentence. If there is no need to substitute it, select No substitution required.

Creatures began moving properly around 570 million years ago shortly before the Cambrian explosion sparked the first vertebrates.

- Ans
- ✗ 1. the Cambrian explosion when sparked the first vertebrates.
  - ✓ 2. No substitution required
  - ✗ 3. the Cambrian explosion whom sparked the first vertebrates.
  - ✗ 4. the Cambrian explosion who sparked the first vertebrates.

Question ID : 98958011612

Status : Answered

Chosen Option : 2

Q.1 64 Select the most appropriate option to substitute the underlined segment in the given sentence. If there is no need to substitute it, select No substitution required.

A study has uncovered a previously overlooked law of natural selection based on "survival of the slacker", that is, spend all day lazing about could be good for human evolution.

- Ans
- ✗ 1. No substitution required
  - ✗ 2. spending all day lazing about must be good for human evolution
  - ✗ 3. spend all day lazing about will be good for human evolution
  - ✓ 4. spending all day lazing about could be good for human evolution

Question ID : 98958011611

Status : Answered

Chosen Option : 4

Q.1 65 Select the most appropriate meaning of the underlined idiom in the given sentence.

When the mixer would not work Naren's mother said, "If it's not one thing, it's another." How will I manage?"



- Ans  1. when one thing goes wrong, then another, and another
2.  
when we entertain one guest, then there are many more coming
3.  
when we know a cause, then there isn't another to be looked for
4.  
when a machine is not functional, it makes others also malfunction

Question ID : 98958011637  
Status : Answered  
Chosen Option : 1

Q.1 Select the most appropriate meaning of the underlined idiom in the given sentence.

66

Sandhya was excited about getting her new posting but I told her "Don't count your chickens before they hatch".

- Ans  1. do not count on something that is not going to happen
2. do not wish for something that has not yet happened
3. do not count on a good thing that has not yet happened
4. do not expect something good to happen

Question ID : 98958011635  
Status : Answered  
Chosen Option : 3

Q.1 Identify the segment in the sentence, which contains the grammatical error.

67

More than 25% people admits they have not sent or received a hand-written letter in the past decade.

- Ans  1. a hand-written letter
2. More than 25% people admits
3. they have not sent or received
4. in the past decade

Question ID : 98958011607  
Status : Answered  
Chosen Option : 2

Q.1 Select the most appropriate meaning of the underlined idiom in the given sentence.

68

Anil and Suresh are just finding their feet in the new venture.

- Ans  1. beginning to understand the work and feeling confident
2. getting comfortable and getting a good salary
3. buying and using comfortable foot wear
4. making people fall at their feet, accepting defeat

Question ID : 98958011636  
Status : Answered  
Chosen Option : 1

Q.1 Identify the segment in the sentence, which contains the grammatical error.

69

Security firms would get prosecuted for a breach of their duty if they do not introduced adequate procedures to protect children from harm.

Ans

- 1. would get prosecuted
- 2. for a breach of their duty
- 3. to protect children
- 4. do not introduced

Question ID : 98958011608

Status : Answered

Chosen Option : 2

Q.1 Select the antonym of the given word.

70

MUDDLE

Ans

- 1. refuse
- 2. order
- 3. refute
- 4. spoil

Question ID : 98958011631

Status : Answered

Chosen Option : 2

Q.1 Select the synonym of the given word.

71

CLINCHED

Ans

- 1. bounded
- 2. finalized
- 3. devoted
- 4. argued

Question ID : 98958011626

Status : Answered

Chosen Option : 2

Q.1 Select the most appropriate meaning of the underlined idiom in the given sentence.

72

The politician began his speech by saying, "Lend me your ears".

Ans

- 1. to politely ask for someone's hearing-aid
- 2. to politely ask for someone's speakers
- 3. to politely ask for someone's full attention
- 4. to politely ask for someone's headphones

Question ID : 98958011638  
Status : Answered  
Chosen Option : 3

Q.1 Select the most appropriate words to fill in the blanks.

73

Teaching is so much more than \_\_\_\_\_ in front of a whiteboard as one of the most important elements of teaching is \_\_\_\_\_ relationships with students.

Ans

- 1. standing; building
- 2. waiting; building
- 3. waiting; enabling
- 4. standing; enabling

Question ID : 98958011616  
Status : Answered  
Chosen Option : 1

Q.1 Select the most appropriate words to fill in the blanks.

74

Although many western cultures are moving towards more \_\_\_\_\_, less hierarchical organizations, the new research suggests that \_\_\_\_\_ power structures and basic values of charity and fraternity are the cornerstones of successful societies.

Ans

- 1. organized; radical
- 2. substantial; informal
- 3. liberal; traditional
- 4. liberal; radical

Question ID : 98958011614  
Status : Answered  
Chosen Option : 3

Q.1 Select the wrongly spelt word.

75

Ans

- 1. reinforcement
- 2. remembrance
- 3. reimburssement
- 4. reflection

Question ID : 98958011645  
Status : Answered  
Chosen Option : 1

Q.1 Select the antonym of the given word.

76

COMPLACENT

Ans

- 1. conceited
- 2. concerned
- 3. contentious
- 4. contended

Question ID : 98958011632  
Status : Answered  
Chosen Option : 2

Q.1  
77 Select the antonym of the given word

LAUNCH

- Ans  1. withdraw  
 2. dinner  
 3. release  
 4. brake

Question ID : 98958011634  
Status : Answered  
Chosen Option : 1

Q.1  
78 Select the word, which means the same as the group of words given.

to show or state that someone or something is not guilty of something

- Ans  1. escape  
 2. pardon  
 3. charge  
 4. vindicate

Question ID : 98958011643  
Status : Answered  
Chosen Option : 4

Q.1  
79 Select the synonym of the given word.

ELUSIVE

- Ans  1. distorted  
 2. wrong  
 3. intangible  
 4. refined

Question ID : 98958011628  
Status : Answered  
Chosen Option : 3

Q.1  
80 Select the most appropriate meaning of the underlined idiom in the given sentence.

"Get down to brass tacks now", ordered the Team Leader, when he found that the targets were nowhere near completion.

- Ans  1. start taking up the most important facts of a situation  
 2. become angry about something that is not done  
 3. come back to the tracks and start again



4. examine the thumb tacks used to fix a notice

Question ID : 98958011639

Status : Answered

Chosen Option : 1

Q.1 Select the most appropriate words to fill in the blanks.

81 Advocates say the idea of a basic income eliminates poverty traps and \_\_\_\_\_ income while \_\_\_\_\_ the individual and reducing paperwork.

Ans  1. redistributes; empowering

2. earned; helping

3. earns; eliminating

4. distributes; empowers

Question ID : 98958011618

Status : Answered

Chosen Option : 1

Q.1 Select the wrongly spelt word.

82

Ans  1. contraction

2. contextual

3. concievable

4. commitment

Question ID : 98958011648

Status : Answered

Chosen Option : 4

Q.1 Identify the segment in the sentence, which contains the grammatical error.

83

Last year the UK saw it's first child diagnosed with internet addiction.

Ans  1. Last year

2. the UK saw

3. it's first child

4. diagnosed with

Question ID : 98958011605

Status : Answered

Chosen Option : 2

Q.1 Select the word, which means the same as the group of words given.

84

the science and art of growing fruits, vegetables, flowers, or ornamental plants

Ans  1. agriculture

2. horticulture

3. viniculture



4. sericulture

Question ID : 98958011641

Status : Answered

Chosen Option : 2

Q.1 Identify the segment in the sentence, which contains the grammatical error.  
85

Tesla designed system for sending electricity over the air through a series of enormous towers.

- Ans
- 1. for sending electricity
  - 2. Tesla designed system
  - 3. through a series of enormous towers
  - 4. over the air

Question ID : 98958011604

Status : Answered

Chosen Option : 1

Q.1 Select the synonym of the given word.  
86

REQUISITE

- Ans
- 1. dominant
  - 2. dynamic
  - 3. critical
  - 4. obligatory

Question ID : 98958011629

Status : Answered

Chosen Option : 4

Q.1 Select the most appropriate words to fill in the blanks.

87

All societies are held together by seven universal moral rules, which include \_\_\_\_\_ to superiors and \_\_\_\_\_ the property of others.

- Ans
- 1. deferring; respecting
  - 2. deferring; guarding
  - 3. following; respecting
  - 4. conforming; guarding

Question ID : 98958011615

Status : Answered

Chosen Option : 2

Q.1 Select the wrongly spelt word.  
88

- Ans
- 1. Inquisitive
  - 2. Inherent
  - 3. Ininstitutional

**X** 4. Invitation

Question ID : 98958011647  
Status : Answered  
Chosen Option : 3

Q.1 Select the most appropriate words to fill in the blanks.

89

The idea of a basic income as a replacement for means-tested \_\_\_\_\_ payments has its share of supporters on both the left and the right of the political \_\_\_\_\_.

Ans

- X** 1. extra; support
- X** 2. goodness; zone
- X** 3. free; range
- ✓** 4. welfare; spectrum

Question ID : 98958011617  
Status : Answered  
Chosen Option : 4

Q.1 Select the most appropriate option to substitute the underlined segment in the given sentence. If there is no need to substitute it, select No substitution required.

90

Doing short bursts of high intensity exercise can be most effective to weight loss than moderate workouts.

Ans

- X** 1. more effective to weight loss than
- X** 2. No substitution required
- X** 3. most effective for weight loss than
- ✓** 4. more effective for weight loss than

Question ID : 98958011609  
Status : Answered  
Chosen Option : 4

**Comprehension:**

In the following passage some words have been deleted. Fill in the blanks with the help of the alternatives given. Select the most appropriate option for each number.

Screen time is an inescapable reality of modern childhood, with kids of every age (1) \_\_\_\_\_ hours upon hours in front of iPads, smartphones and televisions. That's not always a bad thing: Educational apps and TV shows (2) \_\_\_\_\_ great ways for children to sharpen their developing brains and (3) \_\_\_\_\_ their communication skills—not to mention the break these (4) \_\_\_\_\_ provide to harried parents. But tread carefully: A number of troubling studies connect delayed cognitive (5) \_\_\_\_\_ in kids with extended exposure to electronic media.

SubQuestion No : 191

Q.1 Select the most appropriate option to fill in blank

91

No.1.

Ans

- X** 1. complying

2. spending

3. earning

4. cheating

Question ID : 98958011620

Status : Answered

Chosen Option : 2

Comprehension:

In the following passage some words have been deleted. Fill in the blanks with the help of the alternatives given. Select the most appropriate option for each number.

Screen time is an inescapable reality of modern childhood, with kids of every age (1) \_\_\_\_\_ hours upon hours in front of iPads, smartphones and televisions. That's not always a bad thing: Educational apps and TV shows (2) \_\_\_\_\_ great ways for children to sharpen their developing brains and (3) \_\_\_\_\_ their communication skills—not to mention the break these (4) \_\_\_\_\_ provide to harried parents. But tread carefully: A number of troubling studies connect delayed cognitive (5) \_\_\_\_\_ in kids with extended exposure to electronic media.

SubQuestion No : 192

Q.1  
92 Select the most appropriate option to fill in blank No.2.

Ans  1. are

2. is

3. were

4. have been

Question ID : 98958011621

Status : Answered

Chosen Option : 1

Comprehension:

In the following passage some words have been deleted. Fill in the blanks with the help of the alternatives given. Select the most appropriate option for each number.

Screen time is an inescapable reality of modern childhood, with kids of every age (1) \_\_\_\_\_ hours upon hours in front of iPads, smartphones and televisions. That's not always a bad thing: Educational apps and TV shows (2) \_\_\_\_\_ great ways for children to sharpen their developing brains and (3) \_\_\_\_\_ their communication skills—not to mention the break these (4) \_\_\_\_\_ provide to harried parents. But tread carefully: A number of troubling studies connect delayed cognitive (5) \_\_\_\_\_ in kids with extended exposure to electronic media.

SubQuestion No : 193

Q.1  
93 Select the most appropriate option to fill in blank  
No.3.

Ans  1. improve

2. burnish

3. dull

4. freshen

Question ID : 98958011622

Status : Answered

Chosen Option : 1

Comprehension:

In the following passage some words have been deleted. Fill in the blanks with the help of the alternatives given. Select the most appropriate option for each number.

Screen time is an inescapable reality of modern childhood, with kids of every age (1) \_\_\_\_\_ hours upon hours in front of iPads, smartphones and televisions. That's not always a bad thing: Educational apps and TV shows (2) \_\_\_\_\_ great ways for children to sharpen their developing brains and (3) \_\_\_\_\_ their communication skills—not to mention the break these (4) \_\_\_\_\_ provide to harried parents. But tread carefully: A number of troubling studies connect delayed cognitive (5) \_\_\_\_\_ in kids with extended exposure to electronic media.

SubQuestion No : 194

Q.1  
94 Select the most appropriate option to fill in blank  
No.4.

Ans  1. vessels

2. gadgets

3. utensils

4. products

Question ID : 98958011623

Status : Answered

Chosen Option : 2

Comprehension:



In the following passage some words have been deleted. Fill in the blanks with the help of the alternatives given. Select the most appropriate option for each number.

Screen time is an inescapable reality of modern childhood, with kids of every age (1) \_\_\_\_\_ hours upon hours in front of iPads, smartphones and televisions. That's not always a bad thing: Educational apps and TV shows (2) \_\_\_\_\_ great ways for children to sharpen their developing brains and (3) \_\_\_\_\_ their communication skills—not to mention the break these (4) \_\_\_\_\_ provide to harried parents. But tread carefully: A number of troubling studies connect delayed cognitive (5) \_\_\_\_\_ in kids with extended exposure to electronic media.

SubQuestion No : 195

Q.1  
95 Select the most appropriate option to fill in blank No.5.

- Ans
- 1. increment
  - 2. improvement
  - 3. progress
  - 4. change

Question ID : 98958011624  
Status : Answered  
Chosen Option : 4

Q.1  
96 Select the word, which means the same as the group of words given.

a company or person that makes or sells sweets or chocolate

- Ans
- 1. confectioner
  - 2. vendor
  - 3. chef
  - 4. wholesaler

Question ID : 98958011640  
Status : Answered  
Chosen Option : 1

Q.1  
97 Select the wrongly spelt word.

- Ans
- 1. apartheid
  - 2. appearance
  - 3. appropriate
  - 4. apparent

Question ID : 98958011649  
Status : Answered  
Chosen Option : 3



Q.1  
98 Select the antonym of the given word

EXPANSION

- Ans
- 1. complaint
  - 2. constraint
  - 3. contraction
  - 4. constriction

Question ID : 98958011633  
Status : Answered  
Chosen Option : 3

Q.1  
99 Select the antonym of the given word.

EVASIVE

- Ans
- 1. frank
  - 2. abusive
  - 3. opaque
  - 4. slippery

Question ID : 98958011630  
Status : Answered  
Chosen Option : 3

Q.2  
00 Select the most appropriate option to substitute the underlined segment in the given sentence. If there is no need to substitute it, select No substitution required.

The World Health Organization were classified Internet gaming as an official mental health disorder.

- Ans
- 1. No substitution required
  - 2. The World Health Organization classify Internet gaming
  - 3. The World Health Organization has classified Internet gaming
  - 4. The World Health Organization classifying Internet gaming

Question ID : 98958011610  
Status : Answered  
Chosen Option : 3

## Recruitment of Sub-Inspector in Delhi Police, CAPFs and Assistant Sub-Inspector in CISF Examination, 2018

Roll No. :	
Registration No.	
Name :	
Exam Venue :	
Exam Time :	4:30 PM - 6:30 PM
Exam Date :	16/03/2019

Section : SI CPO

Q.1 Three of the following four word-pairs are alike in a certain way and one is different. Find the odd one out.

- Ans
- 1. Carpenter : Saw
  - 2. Warrior : Sword
  - 3. Author : Pen
  - 4. Mason : Knife

Question ID : 98958012114  
Status : Answered  
Chosen Option : 4

Q.2 'Cardiology' is related to 'Heart' in the same way as 'Pathology' is related to '\_\_\_\_\_':

- Ans
- 1. Diseases
  - 2. Man
  - 3. Body
  - 4. Soil

Question ID : 98958012117  
Status : Answered  
Chosen Option : 1

Q.3 In a code language, 54831 is coded as 63922. What will be the code for 86274 in that language?

- Ans
- 1. 75365
  - 2. 77185
  - 3. 95365
  - 4. 95185

Question ID : 98958012125  
Status : Answered  
Chosen Option : 3

Q.4 Three of the following four options are similar in a certain way and one is different. Find the one that is different.

- Ans
- 1. 6 – 36 – 216
  - 2. 10 – 100 – 1000
  - 3. 3 – 6 – 27

4. 5 - 25 - 125

Question ID : 98958012135  
Status : Answered  
Chosen Option : 3

Q.5 Select the option that is related to the third term in the same way as the second term is related to the first term.

RY : QZ :: HK : \_\_\_\_\_

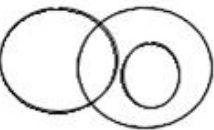
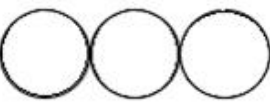
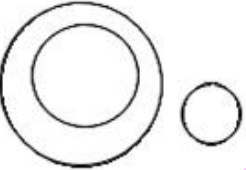
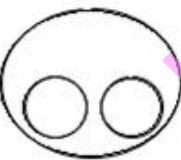
- Ans  1. GJ  
 2. GL  
 3. IL  
 4. IM

Question ID : 98958012121  
Status : Answered  
Chosen Option : 2

Q.6 Select the Venn diagram that best illustrates the relationship between the following three classes.

Hospital, Doctor, Patient

Ans

1. 
2. 
3. 
4. 

Question ID : 98958012156  
Status : Answered  
Chosen Option : 4

Q.7 Three of the following four numbers are alike in a certain way and one is different. Identify the different one.

- Ans  1. 215  
 2. 169  
 3. 144  
 4. 196

Question ID : 98958012137  
Status : Answered  
Chosen Option : 1

Q.8 A Nurse moved 90 m in the East in a hospital to look for her duty Doctor, then she turned right and went 20 m. After this she turned right and after going 30 m she reached I.C.U. but the Doctor was not there. From there she went 100 m to her north and met her doctor. What distance did she moved to meet her duty doctor from the starting point.

- Ans  1. 100 m  
 2. 120 m  
 3. 80 m  
 4. 140 m

Question ID : 98958012153  
 Status : Answered  
 Chosen Option : 1

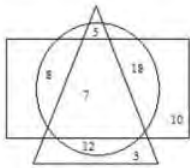
Q.9 Three of the following four number-pairs are alike in a certain way and one is different. Identify the different one.

- Ans  1. 5 : 29  
 2. 8 : 62  
 3. 3 : 7  
 4. 6 : 34

Question ID : 98958012136  
 Status : Answered  
 Chosen Option : 1

Q.1 In the following diagram, the rectangle represents doctors, the triangle represents players and the circle represents philosophers.

The numbers in different segments show the number of persons.



According to the given diagram, How many players are philosophers but not Doctors?

- Ans  1. 17  
 2. 7  
 3. 5  
 4. 12

Question ID : 98958012155  
 Status : Answered  
 Chosen Option : 1

Q.1 Which number will come next in the following series?

1, 3, 7, 15, 31, 63, \_\_\_\_\_

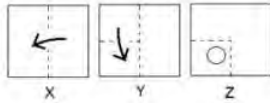
- Ans  1. 139  
 2. 127  
 3. 125  
 4. 126

Question ID : 98958012128

Status : Answered


Chosen Option : 2

**Q.1** Given is a set of three figures, X, Y and Z, showing the folding sequence of a piece of paper. Fig Z shows the manner in which the folded paper has been cut. Study these figures carefully and select the option that would most closely resemble this piece of paper when unfolded.




Ans


1.



2.



3.



4.




Question ID : 98958012152

Status : Answered

Chosen Option : 2

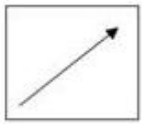
**Q.1** Select the correct mirror image of the given figure when the mirror is placed at the right side.

3

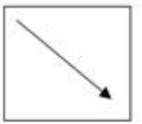


Ans

1.



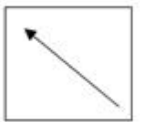
2.



3.



4.



Question ID : 98958012150



Status : **Answered**  
Chosen Option : 4

**Q.1** Two statements are given, followed by four conclusions I, II, III and IV. Assuming these statements to be true, even if they seem to be at variance with commonly known facts, decide which of the given conclusions logically follow(s) from the statements.

4

**Statements:**

Some boxes are dolls.

All dolls are pens.

**Conclusions:**

I. Some boxes are pens.

II. Some pens are boxes.

III. Some pens are dolls.

IV. All pens are dolls.

- Ans**
- 1. Only conclusions I, II and IV follow.
  - 2. All the conclusions follow.
  - 3. Only conclusions I, II and III follow.
  - 4. Only conclusions II, III and IV follow.

Question ID : **98958012127**  
Status : **Answered**  
Chosen Option : 3

**Q.1** Select the option that gives the correct explanation for the following group of words.

5

Bridge, Link, Chain

- Ans**
- 1. They join two parts.
  - 2. They are suits of cards.
  - 3. They are types of medals.
  - 4. They are jewels.

Question ID : **98958012120**  
Status : **Answered**  
Chosen Option : 1

**Q.1** Identify the number that does NOT belong in the given series.

6

1, 8, 27, 64, 125, 216, 344, 512, 729

- Ans**
- 1. 512
  - 2. 729
  - 3. 64
  - 4. 344

Question ID : **98958012129**  
Status : **Answered**  
Chosen Option : 4

Q.1 Select the correct alternative to indicate the arrangement of the following words in a logical and meaningful order.

7

- 1) Alarm Set
- 2) Office
- 3) Car
- 4) Wake up
- 5) Alarm Rang
- 6) Get Ready

- Ans
- 1. 1, 5, 4, 3, 6, 2
  - 2. 1, 2, 3, 4, 5, 6
  - 3. 1, 4, 5, 6, 3, 2
  - 4. 1, 5, 4, 6, 3, 2

Question ID : 98958012110

Status : Answered

Chosen Option : 4

Q.1 उस विकल्प का चयन कीजिए जिसमें शब्द-युग्म के बीच वही सम्बन्ध है जो संबंध निम्नलिखित शब्द-युग्म के बीच है।

8

लड़का : लड़की

- Ans
- 1. घोड़ा : हिरणी
  - 2. बिल्ली : बिलौटा
  - 3. मुर्गा : मुर्गी
  - 4. गधा : रेंकना

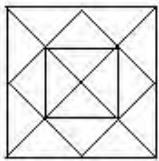
Question ID : 98958012119

Status : Answered

Chosen Option : 3

Q.1 Find the number of squares in the following figure.

9



- Ans
- 1. 6
  - 2. 4
  - 3. 9
  - 4. 7

Question ID : 98958012146

Status : Answered

Chosen Option : 4

Q.2

0 Which number will replace the question mark (?) in the following series?

2, 5, 10, 17, 26, 37, ?, 65, 82, 101

- Ans
- 1. 48
  - 2. 42
  - 3. 50
  - 4. 49

Question ID : 98958012130  
Status : Answered  
Chosen Option : 3

Q.2 If 'A' denotes '+', 'B' denotes '×', 'C' denotes '÷' and 'D' denotes '-', then what will be the value of the following expression?

12 B 12 A 4 C 5 D 1

- Ans
- 1. 39
  - 2. 50
  - 3. 40
  - 4. 59

Question ID : 98958012142  
Status : Answered  
Chosen Option : 3

Q.2 Three of the following four letter-clusters are alike in a certain way and one is different. Find the odd one out.

- 2
- Ans
- 1. UVwXXYY
  - 2. BCdEFFF
  - 3. IJkLLMM
  - 4. PQrSSTT

Question ID : 98958012113  
Status : Answered  
Chosen Option : 2

Q.2 Select the option that is related to the third number in the same way as the second number is related to the first number.

- 3
- 25 : 15625 :: 30 : \_\_\_\_\_
- Ans
- 1. 2700
  - 2. 27000
  - 3. 900
  - 4. 2500

Question ID : 98958012133  
Status : Answered  
Chosen Option : 2

Q.2  
4

Two statements are given, followed by two conclusions I and II. Assuming these statements to be true, even if they seem to be at variance with commonly known facts, decide which of the given conclusions logically follow(s) from the statements.

**Statements:**

All plants are flowers.

No flower is blue.

**Conclusions:**

I. Some plants are blue.

II. Those plants that are not flowers are blue.

- Ans  1. Only conclusion II follows.
2. Only conclusion I follows.
3. Neither conclusion I nor II follows.
4. Both conclusions I and II follow.

Question ID : 98958012126  
Status : Answered  
Chosen Option : 1

Q.2 Three of the following four words are alike in a certain way and one is different. Find the odd one out.  
5

- Ans  1. Cairo
2. Paris
3. Ottawa
4. Kyat

Question ID : 98958012115  
Status : Answered  
Chosen Option : 4

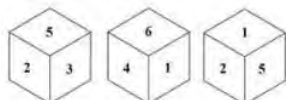
Q.2 Which letter-cluster will replace the question mark (?) in the following series?  
6

XCA, WDZ, UFX, RIU, NMQ, ?

- Ans  1. IKJ
2. JKO
3. JFU
4. IRL

Question ID : 98958012109  
Status : Answered  
Chosen Option : 4

Q.2 Three different positions of the same dice are shown below. Which number is on the face opposite the face showing 4?  
7



- Ans  1. 2

- 2. 5
- 3. 3
- 4. 6

Question ID : 98958012147  
 Status : Answered  
 Chosen Option : 2

Q.2 <sub>8</sub> Select the option in which the given figure is embedded.



Ans

- 1.
- 2.
- 3.
- 4.

Question ID : 98958012149  
 Status : Answered  
 Chosen Option : 1

Q.2 <sub>9</sub> Select the option in which the words share the same relationship as that shared by the given set of words (in the same order).

Hand : Finger : Ring

- 1. Face : Nose : Nose pin
- 2. Anklet : Foot : Ankle
- 3. Earring : Ear : Jewel
- 4. Cap : Head : Hair

Question ID : 98958012118  
 Status : Answered  
 Chosen Option : 1

Q.3 <sub>0</sub> In the following number series, two numbers have been put within brackets. Select the most appropriate option for these numbers in relation to their inclusion in the series.

2, 4, 6, 8, 10, (12), 14, 16, (18), 20

- Ans  1. The first bracketed number is correct and the second is incorrect.
- 2.



The first bracketed number is incorrect and the second is correct.

- 3. Both the bracketed numbers are incorrect.
- 4. Both the bracketed numbers are correct.

Question ID : 98958012138  
Status : Answered  
Chosen Option : 4

Q.3 Select the option in which the given figure is embedded. (Rotation is not allowed)



Ans


1.



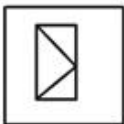
2.



3.



4.



Question ID : 98958012148  
Status : Answered  
Chosen Option : 2

Q.3 In the following number series, two numbers have been put within brackets. Select the most appropriate option for these numbers in relation to their inclusion in the series.

1, 9, 25, 49, (81), 121, 169, (215), 289

Ans  1. Both the bracketed numbers are incorrect.

2.

The first bracketed number is incorrect and the second is correct.

3.

The first bracketed number is correct and the second is incorrect.

4. Both the bracketed numbers are correct.

Question ID : 98958012139  
Status : Answered  
Chosen Option : 3

Q.3 Three of the following four letter-clusters are alike in a certain way and one is different. Find the odd one out.

3

Ans  1. FEDC

- 2. YXVW
- 3. LKIJ
- 4. NMKL

Question ID : 98958012112  
Status : Answered  
Chosen Option : 1

Q.3 Select the option that is related to the third number in the same way as the second number is related to the first number.

4

13 : 84.5 :: 20 : \_\_\_\_\_

- Ans
- 1. 120
  - 2. 150
  - 3. 100
  - 4. 200

Question ID : 98958012132  
Status : Answered  
Chosen Option : 4

Q.3 If TEMPLE is coded as ELPMET, then how will CHURCH be coded as?

5

- Ans
- 1. HCURCH
  - 2. HCRUHC
  - 3. HCRUCH
  - 4. HCURHC

Question ID : 98958012122  
Status : Answered  
Chosen Option : 2

Q.3 Three of the following four number-pairs are alike in a certain way and one is different. Identify the different one.

6

- Ans
- 1. 64 : 6
  - 2. 7 : 49
  - 3. 10 : 100
  - 4. 4 : 16

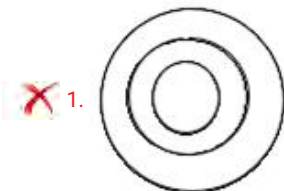
Question ID : 98958012134  
Status : Answered  
Chosen Option : 1

Q.3 Select the Venn diagram that best illustrates the relationship between the following three classes.

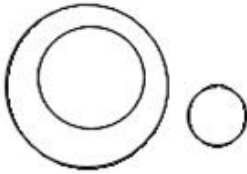
7

Stationery, Pencil, Apple


Ans



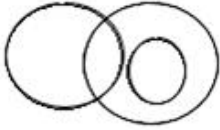
✓ 2.



✗ 3.



✗ 4.



Question ID : 98958012157

Status : Answered

Chosen Option : 2

Q.3  
8 Which of the following interchanges of signs and numbers would make the given equation correct?

$$18 - 3 \div 6 + 24 \times 12 = 48$$

Ans ✓ 1.  $\times$  and  $-$ , 3 and 6

✗ 2.  $\div$  and  $-$ , 12 and 6

✗ 3.  $\times$  and  $+$ , 3 and 6

✗ 4.  $\div$  and  $\times$ , 3 and 12

Question ID : 98958012141

Status : Answered

Chosen Option : 1

Q.3  
9 If 'ARUN' is coded as 54, then how will 'VARUN' be coded as?

Ans ✓ 1. 76

✗ 2. 78

✗ 3. 67

✗ 4. 87

Question ID : 98958012124

Status : Answered

Chosen Option : 1

Q.4  
0 Select the figure that will come next in the following series.



Ans

✗ 1.





Question ID : 98958012144  
Status : Answered  
Chosen Option : 2

Q.4 In a certain code language, 'mee muk pic' means 'roses are yellow', 'nil dic' means 'white flowers' and 'pic muk dic' means 'flowers are fruits'. What is the code for 'white' in that language?

- Ans
- ✗ 1. muk
  - ✓ 2. nil
  - ✗ 3. dic
  - ✗ 4. pic

Question ID : 98958012123  
Status : Answered  
Chosen Option : 2

Q.4 Select the option that will come next in the given series.



- Ans
- ✓ 1.
  - ✗ 2.
  - ✗ 3.
  - ✗ 4.

Question ID : 98958012143  
Status : Answered  
Chosen Option : 1

Q.4 Select the option that is related to the third term in the same way as the second term is related to the first term.

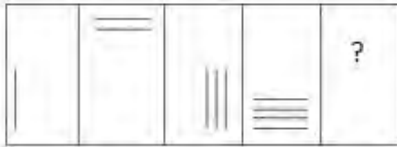
3  
Apple : Fruit :: Spinach : \_\_\_\_\_

- Ans
- ✗ 1. Food

- 2. Flower
- 3. Root
- 4. Vegetable

Question ID : 98958012116  
 Status : Answered  
 Chosen Option : 4

Q.4 Select the figure that will come next in the following series.



Ans

- 1.
- 2.
- 3.
- 4.

KD JOB UPDATES

Question ID : 98958012145  
 Status : Answered  
 Chosen Option : 1

Q.4 Select the option that is related to the third number in the same way as the second number is related to the first number.

5  
 $4 : 20 :: 8 : \underline{\hspace{2cm}}$

- 1. 64
- 2. 40
- 3. 56
- 4. 32

Question ID : 98958012131  
 Status : Answered  
 Chosen Option : 2



Q.4 Select the correct mirror image of the given figure when the mirror is placed on the right of the figure .  
6



Ans

1.



2.



3.



4.



Question ID : 98958012151

Status : Answered

Chosen Option : 3

Q.4 Which of the following two signs need to be interchanged to make the given equation correct?  
7

$$6 \div 5 - 5 \times 5 + 6 = 35$$

Ans

1. + and -

2. + and  $\div$

3.  $\times$  and -

4.  $\div$  and  $\times$

Question ID : 98958012140

Status : Answered

Chosen Option : 4

Q.4 Rama walks from his university campus 4 km towards north and then turns to the right to reach his department. After walking 2.5 km from the department he turns to the left and walks 4 km and reached Conference hall. Now in which direction is he from the starting place?  
8

Ans

1. South-West

2. North-East

3. South

4. West

Question ID : 98958012154

Status : Answered

Chosen Option : 2

Q.4  
9

Which letter will come next in the following series?

Z, U, Q, N, L, \_\_\_\_\_

- Ans
- 1. M
  - 2. G
  - 3. H
  - 4. K

Question ID : 98958012108  
Status : Answered  
Chosen Option : 4

Q.5 Select the correct alternative to indicate the arrangement of the following words in a logical and meaningful order.

0

1. Gateway of India
2. World
3. Mumbai
4. India
5. Maharashtra

- Ans
- 1. 4, 2, 5, 1, 3
  - 2. 2, 4, 5, 1, 3
  - 3. 2, 4, 5, 3, 1
  - 4. 4, 2, 5, 3, 1

Question ID : 98958012111  
Status : Answered  
Chosen Option : 3

Q.5  
1 Citrullus lanatus is the botanical name for \_\_\_\_\_.

- Ans
- 1. Apple
  - 2. Watermelon
  - 3. Banana
  - 4. Orange

Question ID : 98958011921  
Status : Answered  
Chosen Option : 4

Q.5  
2 \_\_\_\_\_ founded the 'Bal Charkha Sangh', where children were taught to spin & weave.

- Ans
- 1. Vinoba Bhave
  - 2. Sarojini Naidu
  - 3. Indira Gandhi
  - 4. Mahatma Gandhi

Question ID : 98958011952

Status : **Answered**  
Chosen Option : 4

Q.5  
3 The 11<sup>th</sup> President of India, \_\_\_\_\_, was also known as the 'Missile Man'.

- Ans
- 1. K R Narayanan
  - 2. Zakir Hussein
  - 3. APJ Abdul Kalam
  - 4. Fakhruddin Ali Ahmed

Question ID : **98958011951**  
Status : **Answered**  
Chosen Option : 3

Q.5  
4 The Hindi film 'Kai Po Che' is based on the book titled \_\_\_\_\_ by Chetan Bhagat.

- Ans
- 1. Two States
  - 2. One Night At The Call Centre
  - 3. Three Mistakes Of My Life
  - 4. Five Point Someone

Question ID : **98958011947**  
Status : **Answered**  
Chosen Option : 3

Q.5  
5 Who was the Chairperson of the NITI Aayog as of January 2019?

- Ans
- 1. Narendra Modi
  - 2. Sushma Swaraj
  - 3. Amit Shah
  - 4. Ram Nath Kovind

Question ID : **98958011914**  
Status : **Answered**  
Chosen Option : 1

Q.5  
6 Who is the founder of the biotech Indian company called 'Biocon'?

- Ans
- 1. Ratan Tata
  - 2. Indu Jain
  - 3. Kiran Majumdar Shaw
  - 4. Mukesh Ambani

Question ID : **98958011946**  
Status : **Answered**  
Chosen Option : 3

Q.5  
7 The fear of foreigners is called:

Ans

- 1. Toxiphobia
- 2. Xenophobia
- 3. Sitophobia
- 4. Theophobia

Question ID : 98958011924  
Status : Answered  
Chosen Option : 2

Q.5  
8 Malus pumila is the botanical name of the \_\_\_\_\_ tree.

- Ans
- 1. Orange
  - 2. Water melon
  - 3. Banana
  - 4. Apple

Question ID : 98958011920  
Status : Answered  
Chosen Option : 2

Q.5  
9 The Panchayat Raj System was first adopted by the state of \_\_\_\_\_.

- Ans
- 1. West Bengal
  - 2. Tamil Nadu
  - 3. Andhra Pradesh
  - 4. Rajasthan

Question ID : 98958011948  
Status : Answered  
Chosen Option : 4

Q.6  
0 The Purna Kumbh Mela takes place every \_\_\_\_\_ years at one of the four places by rotation, Prayag, Haridwar, Ujjain and Nashik.

- Ans
- 1. six
  - 2. two
  - 3. twelve
  - 4. three

Question ID : 98958011912  
Status : Answered  
Chosen Option : 3

Q.6  
1 \_\_\_\_\_ के त्योहार को फगवा के रूप में भी जाना जाता है।

- Ans
- 1. दिवाली
  - 2. होली

3. संक्रांति

4. गणेश चतुर्थी

Question ID : 98958011908  
Status : Answered  
Chosen Option : 2

Q.6  
2 Which of the following flowers is botanically known as Narcissus?

Ans  1. Carnation

2. Rose

3. Daffodil

4. Lily

Question ID : 98958011919  
Status : Answered  
Chosen Option : 3

Q.6  
3 पुंग चोलम किस राज्य का लोक नृत्य है?

Ans  1. मध्य प्रदेश

2. मणिपुर

3. केरल

4. कर्नाटक

Question ID : 98958011909  
Status : Answered  
Chosen Option : 4

Q.6  
4 Which of the following is the unit of Magnetic field strength?

Ans  1. Ohm

2. Gauss

3. Tesla

4. Weber

Question ID : 98958011922  
Status : Answered  
Chosen Option : 4

Q.6  
5 Padma Vibhushan is the \_\_\_\_\_ civilian award of India.

Ans  1. highest

2. second highest

3. third highest

4. fourth highest



Question ID : 98958011944  
Status : Answered  
Chosen Option : 2

Q.6  
6 ONGC discovered the country's first shale gas reserve at:

- Ans
- 1. Chandikhol
  - 2. Durgapur
  - 3. Jamnagar
  - 4. Padur

Question ID : 98958011933  
Status : Answered  
Chosen Option : 1

Q.6  
7 \_\_\_\_\_ was born to the Chauhan King Someshvara and his queen Karpuradevi in 1166 CE.

- Ans
- 1. Prithviraj Chauhan
  - 2. Maharana Pratap
  - 3. Maharaja Suraj Mal
  - 4. Maharaja Man Singh

Question ID : 98958011938  
Status : Answered  
Chosen Option : 1

Q.6  
8 वैदिक सिद्धांत के अनुसार निम्नलिखित में से कौन-सा गलत है?

- Ans
- 1. वैश्यों, या सामान्य जनों की उत्पत्ति पुरुष की जांघों से हुई थी
  - 2. क्षत्रिय, या योद्धा शासकों की उत्पत्ति, पुरुष की भुजाओं से हुई थी
  - 3. शूद्र, या मजदूर और नौकर की उत्पत्ति, पुरुष के पैरों से हुई थी
  - 4. ब्रह्मणों, या पुरोहित की उत्पत्ति, पुरुष के कानों से हुई थी

Question ID : 98958011936  
Status : Answered  
Chosen Option : 1

Q.6  
9 Which of the following flowers is botanically known as Dianthus?

- Ans
- 1. Rose
  - 2. Lily

- 3. Daffodil
- 4. Carnation

Question ID : 98958011918  
Status : Answered  
Chosen Option : 3

Q.7  
0 Gir National Park is known for its \_\_\_\_\_.

- Ans
- 1. Red silk cotton
  - 2. Orangutan
  - 3. Cherry blossom
  - 4. Asiatic Lions

Question ID : 98958011934  
Status : Answered  
Chosen Option : 4

Q.7  
1 \_\_\_\_\_ was a professor of political science and economics at the University of Taxila.

- Ans
- 1. Kautilya
  - 2. Bindusara
  - 3. Samudragupta
  - 4. Ajatshatru

Question ID : 98958011939  
Status : Answered  
Chosen Option : 1

Q.7  
2 Nyctophobia is the fear of:

- Ans
- 1. Birds
  - 2. Darkness
  - 3. Light
  - 4. Animals

Question ID : 98958011925  
Status : Answered  
Chosen Option : 2

Q.7  
3 \_\_\_\_\_ is a textile art from Gujarat / Rajasthan.

- Ans
- 1. Bandhani
  - 2. Paithani
  - 3. Chanderi
  - 4. Ikat

Question ID : 98958011935

Status : Answered  
Chosen Option : 3

Q.7  
4 The festival of \_\_\_\_\_ is dedicated to Goddess Durga and her nine avatars.

- Ans
- 1. Sankranti
  - 2. Navratri
  - 3. Diwali
  - 4. Holi

Question ID : 98958011910  
Status : Answered  
Chosen Option : 2

Q.7  
5 शरीर में \_\_\_\_\_ की अत्यधिक मात्रा गठिया का कारण बनती है।

- Ans
- 1. लैक्टिक एसिड
  - 2. एसिटिक एसिड
  - 3. नाइट्रिक एसिड
  - 4. यूरिक एसिड

Question ID : 98958011928  
Status : Answered  
Chosen Option : 1

Q.7  
6 Which of the following was NOT a part of the 'Navratna' at Vikramaditya's court?

- Ans
- 1. Kshapanaka
  - 2. Kalidasa
  - 3. Vararuchi
  - 4. Surdas

Question ID : 98958011940  
Status : Answered  
Chosen Option : 4

Q.7  
7 \_\_\_\_\_ is situated at the confluence of Alaknanda and Mandakini rivers.

- Ans
- 1. Vishnuprayag
  - 2. Karnaprayag
  - 3. Nandaprayag
  - 4. Rudraprayag

Question ID : 98958011932  
Status : Answered  
Chosen Option : 4

Q.7

8 Which of the following clubs, founded in 1889, is the oldest Indian club still in operation as on January 2019?

- Ans
- 1. Indian Bank Recreational Club
  - 2. Calcutta Cricket & Football Club
  - 3. Mohun Bagan Athletic Club
  - 4. North Imphal Sporting Association

Question ID : 98958011955  
Status : Answered  
Chosen Option : 3

Q.7 The Indian Olympic Association has expressed interest to host the \_\_\_\_\_ summer Olympics.

- 9
- Ans
- 1. 2020
  - 2. 2024
  - 3. 2032
  - 4. 2028

Question ID : 98958011956  
Status : Answered  
Chosen Option : 3

Q.8 \_\_\_\_\_ city tops the list of top 10 richest cities in India, with a GDP of \$ 209 billion.

- 0
- Ans
- 1. New Delhi
  - 2. Kolkata
  - 3. Bengaluru
  - 4. Mumbai

Question ID : 98958011915  
Status : Answered  
Chosen Option : 4

Q.8 The ancient name of the river Tungabhadra was:

- 1
- Ans
- 1. Vitasta
  - 2. Kubha
  - 3. Pampa
  - 4. Sindhu

Question ID : 98958011931  
Status : Answered  
Chosen Option : 3

Q.8 Prince Khurram grew up to be known as:

- 2
- Ans
- 1. Jahangir
  - 2. Akbar
  - 3. Humayun

✓ 4. Shah Jahan

Question ID : 98958011941  
Status : Answered  
Chosen Option : 4

Q.8  
3 Arundhati Roy won Man Booker Prize in 1997 for her book:

- Ans
- ✗ 1. History of Wolves
  - ✗ 2. 2 States
  - ✗ 3. The Ministry of Utmost Happiness
  - ✓ 4. The God of Small Things

Question ID : 98958011945  
Status : Answered  
Chosen Option : 4

Q.8  
4 The BHIM app was launched by Prime Minister Narendra Modi on:

- Ans
- ✗ 1. 31<sup>st</sup> October, 2016
  - ✗ 2. 26<sup>th</sup> January, 2016
  - ✓ 3. 30<sup>th</sup> December, 2016
  - ✗ 4. 15<sup>th</sup> August, 2016

Question ID : 98958011949  
Status : Answered  
Chosen Option : 1

Q.8  
5 Who is the only foreigner to receive the Padma Vibhushan Award in 2019?

- Ans
- ✗ 1. Anilkumar Manibhai Naik
  - ✗ 2. Teejan Bai
  - ✗ 3. Balwant Moreswar Purandare
  - ✓ 4. Ismail Omar Guelleh

Question ID : 98958011943  
Status : Answered  
Chosen Option : 4

Q.8  
6 Natural pearls contain more than 80% \_\_\_\_\_.

- Ans
- ✗ 1. sodium carbonate
  - ✓ 2. calcium carbonate
  - ✗ 3. silica
  - ✗ 4. quartz

Question ID : 98958011923



Status : **Answered**  
Chosen Option : 2

Q.8  
7 Which of the following is the first port in India to become a public company?

- Ans
- 1. Kandla
  - 2. Mangalore
  - 3. Ennore
  - 4. Mormugao

Question ID : **98958011913**  
Status : **Answered**  
Chosen Option : 2

Q.8  
8 India was divided into India and Pakistan by the \_\_\_\_\_ Act.

- Ans
- 1. India Independence
  - 2. Division of India
  - 3. Partition of India
  - 4. Government of India

Question ID : **98958011950**  
Status : **Answered**  
Chosen Option : 3

Q.8  
9 \_\_\_\_\_ is the world's richest cricket board as of year 2018.

- Ans
- 1. England and Wales Cricket Board
  - 2. Cricket South Africa
  - 3. Board of Control for Cricket in India
  - 4. Pakistan Cricket Board

Question ID : **98958011957**  
Status : **Answered**  
Chosen Option : 3

Q.9  
0 Tennis player Somdev Kishore Devvarman was awarded the \_\_\_\_\_ in 2018.

- Ans
- 1. Padma Bhushan
  - 2. Bharat Ratna
  - 3. Padma Vibhushan
  - 4. Padma Shree

Question ID : **98958011954**  
Status : **Answered**  
Chosen Option : 1

Q.9  
1 Which of the below mentioned human organs can regrow after damage in adults?

Ans

- 1. Lung
- 2. Gall bladder
- 3. Kidney
- 4. Liver

Question ID : 98958011926  
Status : Answered  
Chosen Option : 4

Q.9 Which of the following is NOT a mint of the Security Printing and Minting Corporation of India Limited (SPMCIL)?  
2

- Ans
- 1. India Government Mint, Gorakhpur
  - 2. India Government Mint, Mumbai
  - 3. India Government Mint, Hyderabad
  - 4. India Government Mint, Kolkata

Question ID : 98958011917  
Status : Answered  
Chosen Option : 2

Q.9 \_\_\_\_\_ was affectionately called 'Ba'.  
3

- Ans
- 1. Vijayalaxmi Pandit
  - 2. Indira Gandhi
  - 3. Kasturba Gandhi
  - 4. Sarojini Naidu

Question ID : 98958011953  
Status : Answered  
Chosen Option : 3

Q.9 Eid ul-Fitr is celebrated on the first day of Shawwal, which falls in the \_\_\_\_\_ month of the Islamic calendar.  
4

- Ans
- 1. tenth
  - 2. sixth
  - 3. eighth
  - 4. twelfth

Question ID : 98958011911  
Status : Answered  
Chosen Option : 1

Q.9 Name the recipient of the Padma Bhushan Award, 2019 for Trade and Industry (Food Processing).  
5

- Ans
- 1. Mahashay Dharam Pal Gulati
  - 2. Narsingh Dev Jamwal
  - 3. Harvinder Singh Phoolka

4. Vallabhbhai Vasrambhai Marvaniya

Question ID : 98958011942  
Status : Answered  
Chosen Option : 2

Q.9  
6 Photophobia means:

- Ans
- 1. Addiction to light
  - 2. Addiction to taking photos
  - 3. Sensitivity to light
  - 4. Dislike towards taking photos

Question ID : 98958011927  
Status : Answered  
Chosen Option : 3

Q.9  
7 Tata Iron And Steel company (TISCO) was incorporated in:

- Ans
- 1. 1911
  - 2. 1907
  - 3. 1913
  - 4. 1915

Question ID : 98958011916  
Status : Answered  
Chosen Option : 4

Q.9  
8 Vedic civilisation flourished along the river \_\_\_\_\_.

- Ans
- 1. Indus
  - 2. Yamuna
  - 3. Ganga
  - 4. Saraswati

Question ID : 98958011930  
Status : Answered  
Chosen Option : 1

Q.9  
9 The last Nizam of Hyderabad:

- Ans
- 1. Nasir Jung
  - 2. Qulich Khan
  - 3. Mir Osman Ali Khan
  - 4. Muzafar Jung

Question ID : 98958011937  
Status : Answered

Q.1  
00 Bos mutus is the scientific name for:

- Ans  1. Wild yak  
 2. Ox  
 3. Horse  
 4. Buffalo

Question ID : 98958011929  
 Status : Answered  
 Chosen Option : 1

Q.1  
01  $3 \times 7 + 4 - 6 \div 3 - 7 + 45 \div 5 \times 4 + 49$  is equal to:

- Ans  1. 99  
 2. 101  
 3. 103  
 4. 67

Question ID : 98958012312  
 Status : Answered  
 Chosen Option : 2

Q.1  
02 A steel vessel has a base of length 60 cm and breadth 30 cm. Water is poured in the vessel. A cubical steel box having edge of 30 cm is immersed completely in the vessel. By how much will the water rise?

- Ans  1. 12 cm  
 2. 9 cm  
 3. 10 cm  
 4. 15 cm

Question ID : 98958012334  
 Status : Answered  
 Chosen Option : 4

Q.1  
03 The given pie-chart, shows the percentage distribution of the expenditure incurred in publishing a book. Study the pie-chart and the answer the questions based on it.

Various Expenditures (in percentage) Incurred in Publishing a Book



In the given pie-chart, by what percentage the Promotion cost on the book is less than the Paper cost?

- Ans  1. 75  
 2. 50  
 3. 25

✓ 4. 60

Question ID : 98958012353  
Status : Answered  
Chosen Option : 1

Q.1  
04 If  $a + b - c = 7$ ,  $ab - bc - ca = 21$ , then  $a^3 + b^3 - c^3 + 3abc =$

- Ans
- ✓ 1. -98
  - ✗ 2. 98
  - ✗ 3. 124
  - ✗ 4. 117

Question ID : 98958012339  
Status : Answered  
Chosen Option : 2

Q.1  
05 If two equal circles whose centres are O and O' intersect each other at the point A and B,  $OO' = 12$  cm and  $AB = 16$  cm, then radius of the circle is:

- Ans
- ✗ 1. 12 cm
  - ✗ 2. 15 cm
  - ✗ 3. 14 cm
  - ✓ 4. 10 cm

Question ID : 98958012342  
Status : Answered  
Chosen Option : 4

Q.1  
06 A boy increases his speed to  $\frac{9}{5}$  times of his original speed. By this he reaches his school 30 minutes before the usual time. How much time does he takes usually?

- Ans
- ✓ 1. 67.50 minutes
  - ✗ 2. 67.10 minutes
  - ✗ 3. 67.75 minutes
  - ✗ 4. 67.25 minutes

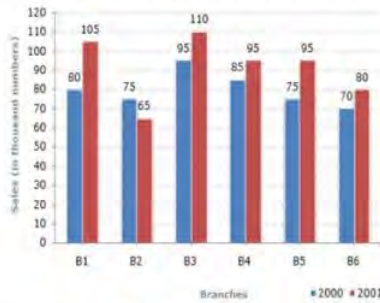
Question ID : 98958012332  
Status : Answered  
Chosen Option : 1

Q.1  
07



The given bar chart, shows the sales of books (in thousand number) from six branches of a publishing company during two consecutive years 2000 and 2001.

Sales of Books (in thousand numbers) from Six Branches - B1, B2, B3, B4, B5 and B6 of a publishing Company in 2000 and 2001.



In the given bar-chart, the ratio of total sales of all branches (in thousand numbers) for the year 2000 to 2001 is:

- Ans
- 1. 55 : 48
  - 2. 7 : 11
  - 3. 45 : 58
  - 4. 48 : 55

Question ID : 98958012350

Status : Answered

Chosen Option : 4

Q.1 ₹15,000 was invested by A and B together to start a small business. They got a profit of ₹2,000 at the end of the year. B took his profit share of ₹600. How much did A invest?

- Ans
- 1. ₹10,000
  - 2. ₹2,000
  - 3. ₹10,500
  - 4. ₹9,000

Question ID : 98958012324

Status : Answered

Chosen Option : 3

Q.1 Pipe A can fill a tank in 16 minutes and pipe B empties it in 24 minutes. If both the pipes are opened together, after how many minutes should B be closed, so that the tank is filled in 30 minutes?

- Ans
- 1. 20 minutes
  - 2. 18 minutes
  - 3. 21 minutes
  - 4. 15 minutes

Question ID : 98958012330

Status : Answered

Chosen Option : 3

Q.1 If roots of  $x^2 - 4x + a = 0$  are equal, then  $a =$

- Ans
- 1. -8
  - 2. 4
  - 3. -4

4. 8

Question ID : 98958012308  
Status : Answered  
Chosen Option : 2

Q.1 If a sum becomes ₹1,460 in two years and ₹1,606 in three years due to the compound interest, then annual rate of interest is:

- Ans  1. 11%  
 2. 9%  
 3. 10%  
 4. 8%

Question ID : 98958012326  
Status : Answered  
Chosen Option : 3

Q.1 Fresh fruit contains 68% water and dry fruit contains 20% water. How much dry fruit can be obtained from 100 kg of fresh fruits?

- Ans  1. 80  
 2. 60  
 3. 40  
 4. 20

Question ID : 98958012321  
Status : Answered  
Chosen Option : 3

Q.1 Side AB of a triangle ABC is 80 cm long, whose perimeter is 170 cm. If angle ABC = 60°, the shortest side of triangle ABC measures \_\_\_\_\_ cm.

- Ans  1. 25  
 2. 21  
 3. 17  
 4. 15

Question ID : 98958012343  
Status : Answered  
Chosen Option : 3

Q.1  $(8 + 4 - 2) \times (17 - 12) \times 10 - 89$  is equal to:

- Ans  1. 4150  
 2. 4120  
 3. 413  
 4. 411

Question ID : 98958012313  
Status : Answered  
Chosen Option : 4

Q.1

15 When the integer  $n$  is divided by 7, the remainder is 3. What is the remainder if  $5n$  is divided by 7?

- Ans
- 1. 0
  - 2. 3
  - 3. 2
  - 4. 1

Question ID : 98958012309  
Status : Answered  
Chosen Option : 4

Q.1 A earns ₹40 per hour and works for 12 hours. B earns ₹60 per hour and works for 10 hours. Find the ratio of their per  
16 day wages.

- Ans
- 1. 4 : 5
  - 2. 5 : 4
  - 3. 15 : 4
  - 4. 6 : 5

Question ID : 98958012323  
Status : Answered  
Chosen Option : 1

Q.1 The perimeter of a square is equal to the perimeter of a rectangle of length 16 cm and breadth 14 cm. Find the  
17 circumference of a semicircle whose diameter is equal to the side of the square.

- Ans
- 1. 25.57 cm
  - 2. 31.57 cm
  - 3. 23.57 cm
  - 4. 21.57 cm

Question ID : 98958012333  
Status : Answered  
Chosen Option : 3

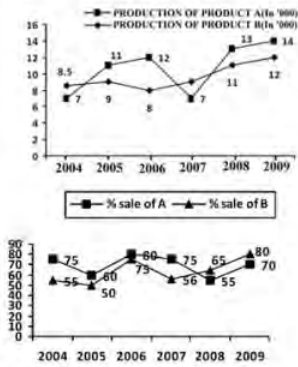
Q.1 The unequal side of an isosceles triangle is 2 cm. The medians drawn to the equal sides are perpendicular. The area of  
18 the triangle is:

- Ans
- 1.  $1 \text{ cm}^2$
  - 2.  $3 \text{ cm}^2$
  - 3.  $5 \text{ cm}^2$
  - 4.  $2 \text{ cm}^2$

Question ID : 98958012344  
Status : Answered  
Chosen Option : 1

Q.1  
19

The line graph shows the production of product A and B (in thousands) during the period 2004 to 2009 and the second line Graph shows the percentage sale of these products.



In the given line graph, what is the total sale of Product A in the year 2005 and 2009 taken together?

- Ans
- 1. 17500
  - 2. 18500
  - 3. 14600
  - 4. 16400

Question ID : 98958012355

Status : Answered

Chosen Option : 4

Q.1 When the sun's angle of depression changes from  $30^\circ$  to  $60^\circ$ , the length of the shadow of a tower decreases by 70 m.  
20 What is the height of the tower?

- Ans
- 1. 45.65 m
  - 2. 60.55 m
  - 3. 65.55 m
  - 4. 36.55 m

Question ID : 98958012347

Status : Answered

Chosen Option : 2

Q.1 If 20% of  $a = b$ , then  $b\%$  of 20 is equal to:  
21

- Ans
- 1. 4% of a
  - 2. 2% of a
  - 3. 16% of a
  - 4. 8% of a

Question ID : 98958012320

Status : Answered

Chosen Option : 1

Q.1  $(\operatorname{cosec}A - \sin A)^2 + (\sec A - \cos A)^2 - (\cot A - \tan A)^2$  is equal to:  
22

- Ans
- 1. 1
  - 2. 2
  - 3. 0
  - 4. -1

Question ID : 98958012345  
Status : Answered  
Chosen Option : 1

Q.1  $\frac{0.72 \times 0.72 \times 0.72 - 0.39 \times 0.39 \times 0.39}{0.72 \times 0.72 + 0.72 \times 0.39 + 0.39 \times 0.39}$  is equal to:  
23

- Ans  1. 0.33  
 2. 0.45  
 3. 0.39  
 4. 0.36

Question ID : 98958012314  
Status : Answered  
Chosen Option : 1

Q.1 A number is first decreased by 10% and then increased by 10%. The number so obtained is 100 less than the original  
24 number. The original number is:

- Ans  1. 100000  
 2. 100  
 3. 10000  
 4. 1000

Question ID : 98958012319  
Status : Answered  
Chosen Option : 3

Q.1 A man could not decide between discount of 30% or two successive discounts of 25% and 5%, both given on a  
25 shopping of ₹2,000. What is the difference between both the discounts?

- Ans  1. ₹15  
 2. No difference  
 3. ₹20  
 4. ₹25

Question ID : 98958012318  
Status : Answered  
Chosen Option : 4

Q.1 At what rate percent per annum with simple interest will a sum of money double in 12.5 years?  
26

- Ans  1. 8  
 2. 10  
 3. 12.5  
 4. 6

Question ID : 98958012325  
Status : Answered  
Chosen Option : 1

Q.1



27 The LCM of two numbers is 168 and their HCF is 12. If the difference between the numbers is 60, what is the sum of the numbers?

- Ans
- 1. 122
  - 2. 164
  - 3. 112
  - 4. 108

Question ID : 98958012310

Status : Answered

Chosen Option : 4

Q.1 28 If  $x + x^{-1} = 2$ , then the value of  $x^3 + x^{-3}$  is:

- Ans
- 1. 3
  - 2.  $\frac{1}{2}$
  - 3. 1
  - 4. 2

Question ID : 98958012338

Status : Answered

Chosen Option : 4

Q.1 29 A unique circle can always be drawn through  $x$  number of given non-collinear points, then  $x$  must be:

- Ans
- 1. 1
  - 2. 4
  - 3. 2
  - 4. 3

Question ID : 98958012341

Status : Answered

Chosen Option : 1

Q.1 30 The speed of a car increases by 2 km/h after every one hour. If the distance travelled in the first one hour was 35 km, what was the total distance travelled in 12 hours?

- Ans
- 1. 558 km
  - 2. 650 km
  - 3. 560 km
  - 4. 552 km

Question ID : 98958012331

Status : Answered

Chosen Option : 4

Q.1 31 सीमा ने मोबाइल खरीदा और उस पर 20% की छूट मिली। अगर उसे 25% की छूट मिल होती, तो वह अतिरिक्त ₹1,000 बचा सकती थी। उसने मोबाइल के लिए कितना भुगतान किया?

- Ans
- 1. ₹24,000
  - 2. ₹22,000

3. ₹25,000

4. ₹20,000

Question ID : 98958012317

Status : Answered

Chosen Option : 1

Q.1 The average weight of 16 boys in a class is 60.25 kg and that of the remaining 10 boys is 45.75 kg. The average weight  
32 of all boys in the class is:

Ans  1. 54.67

2. 53.76

3. 55.37

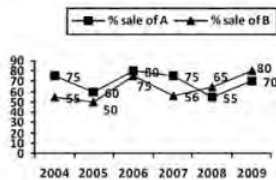
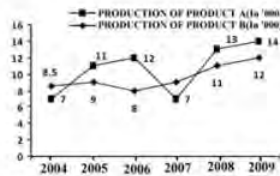
4. 56.27

Question ID : 98958012316

Status : Answered

Chosen Option : 1

Q.1 The line graph shows the production of product A and B (in thousands) during the period 2004 to 2009 and the second  
33 line Graph shows the percentage sale of these products.



In the given line graph, what is the total sale of Products A and B in the year 2007?

Ans  1. 13460

2. 10290

3. 11500

4. 12490

Question ID : 98958012357

Status : Answered

Chosen Option : 3

Q.1 A cube of side 1 m length is cut into small cubes of side 10 cm each. How many such small cubes can be obtained?  
34

Ans  1. 10

2. 100

3. 10000

4. 1000

Question ID : 98958012335

Status : Answered

Chosen Option : 4

Q.1 35 A sells a car to B at 10% loss. If B sells it for ₹5,40,000 and gains 20%, the cost price of the car for A was:

- Ans
- 1. ₹5,10,000
  - 2. ₹5,40,000
  - 3. ₹5,20,000
  - 4. ₹5,00,000

Question ID : 98958012322

Status : Answered

Chosen Option : 4

Q.1 36 If  $a+b = 8$ ,  $ab = -12$ , then  $a^3+b^3 =$

- Ans
- 1. -244
  - 2. -833
  - 3. 800
  - 4. 833

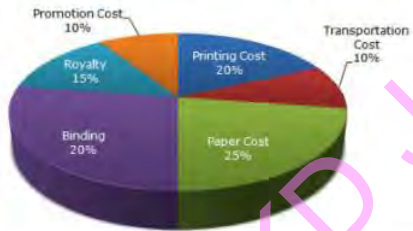
Question ID : 98958012340

Status : Answered

Chosen Option : 3

Q.1 37 The given pie-chart, shows the percentage distribution of the expenditure incurred in publishing a book. Study the pie-chart and the answer the questions based on it.

Various Expenditures (in percentage) Incurred in Publishing a Book



In the given pie-chart, by what percentage Printing and Binding cost on the book is less than the other costs?

- Ans
- 1.  $\frac{50}{3}$
  - 2.  $\frac{100}{3}$
  - 3.  $\frac{47}{3}$
  - 4.  $\frac{20}{3}$

Question ID : 98958012354

Status : Answered

Chosen Option : 2

Q.1

38  $\frac{4}{3} \tan^2 60^\circ + 3 \cos^2 30^\circ - 2 \sec^2 30^\circ - \frac{3}{4} \cot^2 60^\circ$  is equal to:

Ans

- 1.  $\frac{8}{3}$
- 2.  $\frac{5}{4}$
- 3.  $\frac{7}{3}$
- 4.  $\frac{10}{3}$

Question ID : 98958012346

Status : Answered

Chosen Option : 4

Q.1 The average of 26 numbers is zero. Of them, how many may be greater than zero, at the most?

39

Ans

- 1. 0
- 2. 25
- 3. 20
- 4. 15

Question ID : 98958012315

Status : Answered

Chosen Option : 2

Q.1 What will be total cost of polishing curved surface of a wooden cylinder at rate of ₹20 per  $m^2$ , if its diameter is 40 cm and height is 7m?

40

Ans

- 1. ₹186
- 2. ₹184
- 3. ₹175
- 4. ₹176

Question ID : 98958012337

Status : Answered

Chosen Option : 4

Q.1 A can do a work in 20 days, while B can do the same work in 25 days. They started the work jointly. Few days later C also joined them and thus all of them completed the whole work in 10 days. All of them were paid total of ₹700. What is the share of C?

41

Ans

- 1. ₹75
- 2. ₹55
- 3. ₹70
- 4. ₹65

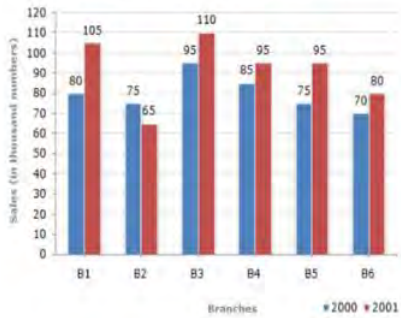
Question ID : 98958012328

Status : Answered

Chosen Option : 3

Q.1 The given bar chart, shows the sales of books (in thousand number) from six branches of a publishing company during two consecutive years 2000 and 2001.

Sales of Books (in thousand numbers) from Six Branches - B1, B2, B3, B4, B5 and B6 of a publishing Company in 2000 and 2001.



In the given bar-chart, total sales of branches B1, B3 and B5 taken together for both the years (in thousand numbers) is:

- Ans  1. 560  
 2. 240  
 3. 310  
 4. 650

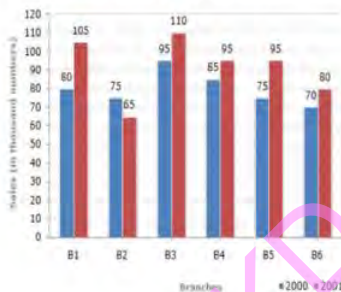
Question ID : 98958012349

Status : Answered

Chosen Option : 1

Q.1 The given bar chart, shows the sales of books (in thousand number) from six branches of a publishing company during two consecutive years 2000 and 2001.

Sales of Books (in thousand numbers) from Six Branches - B1, B2, B3, B4, B5 and B6 of a publishing Company in 2000 and 2001.



In the given bar-chart, the ratio of total sales of branches B1, B3 and B5 to total sales of branches B2, B4 and B6 taken together for both the years (in thousand numbers) is:

- Ans  1. 45 : 23  
 2. 47 : 56  
 3. 56 : 47  
 4. 23 : 45

Question ID : 98958012351

Status : Answered

Chosen Option : 3

Q.1 From a point P on a level ground, the angle of elevation of the top of a tower is 30°. If the tower is 270 m high, the distance of point P from the foot of the tower is:

- Ans  1. 476.65 m  
 2. 367.65 m



✓ 3. 467.65 m

✗ 4. 376.65 m

Question ID : 98958012348

Status : Answered

Chosen Option : 3

Q.1 The product of two numbers is 6760 and their HCF is 13. How many such pair of numbers can be formed?

45

Ans ✗ 1. 1

✓ 2. 2

✗ 3. 3

✗ 4. 4

Question ID : 98958012311

Status : Answered

Chosen Option : 2

Q.1 12 buckets of water fill a tank when the capacity of each bucket is 13.5 litres. How many buckets will be needed to fill

46

the same tank, if the capacity of each bucket is 9 litres?

Ans ✓ 1. 18

✗ 2. 16

✗ 3. 15

✗ 4. 17

Question ID : 98958012329

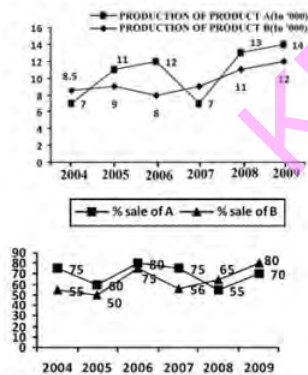
Status : Answered

Chosen Option : 1

Q.1 The line graph shows the production of product A and B (in thousands) during the period 2004 to 2009 and the second

47

line Graph shows the percentage sale of these products.



In the given line graph, what is the total sale of Product B in the year 2004 and 2008 together?

Ans ✗ 1. 12500

✗ 2. 14600

✗ 3. 11950

✓ 4. 11825

Question ID : 98958012356

Status : Answered

Chosen Option : 4

Q.1 48 Original breadth of a rectangular box is 20 cm. The box was then remade in such a way that its length increased by 30% but the breadth decreased by 20% and the area increased by 100 cm<sup>2</sup>. What is the new area of the box?

- Ans
- 1. 2500 cm<sup>2</sup>
  - 2. 2200 cm<sup>2</sup>
  - 3. 2400 cm<sup>2</sup>
  - 4. 2600 cm<sup>2</sup>

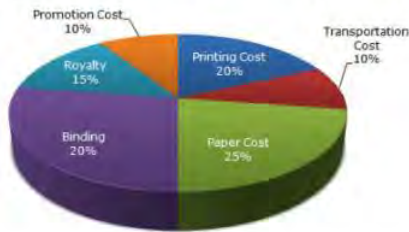
Question ID : 98958012336

Status : Answered

Chosen Option : 3

Q.1 49 The given pie-chart, shows the percentage distribution of the expenditure incurred in publishing a book. Study the pie-chart and the answer the questions based on it.

Various Expenditures (in percentage) Incurred in Publishing a Book



In the given pie-chart, by what percentage the Royalty on the book is less than the Printing cost?

- Ans
- 1. 20
  - 2. 25
  - 3. 10
  - 4. 15

Question ID : 98958012352

Status : Not Answered

Chosen Option : --

Q.1 50 3 men, 4 women and 6 children can complete a work in 7 days. A woman does double the work a man does and a child does half the work a man does. How many women alone can complete this work in 7 days?

- Ans
- 1. 6
  - 2. 8
  - 3. 9
  - 4. 7

Question ID : 98958012327

Status : Not Answered

Chosen Option : --

Q.1 51 Select the most appropriate words to fill in the blanks.

It is known that \_\_\_\_\_, extreme weather, and diseases are the factors responsible for crop failure.

- Ans
- 1. draught
  - 2. draft
  - 3. daft

Comprehension:

Read the following passage and answer the questions given after it.

By the 1920s the improvements in street lighting, domestic lighting and a surge in coffee houses - which were sometimes open all night - was complete. As the night became a place for legitimate activity, the length of time people could dedicate to rest dwindled." Evening's Empire puts forward an account of how this happened. "Associations with night before the 17th Century were not good," it says. "The night was a place populated by people of disrepute - criminals, prostitutes and drunks. Even the wealthy, who could afford candlelight, had better things to spend their money on. There was no prestige or social value associated with staying up all night."

That changed in the wake of the Reformation and the counter-Reformation. Protestants and Catholics became accustomed to holding secret services at night. If earlier the night had belonged to reprobates, now respectable people became accustomed to exploiting the hours of darkness. This trend migrated to the social sphere too, but only for those who could afford to live by candlelight. With the advent of street lighting, however, socializing at night began to filter down through the classes.

In 1667, Paris became the first city in the world to light its streets, using wax candles in glass lamps. It was followed by Lille in the same year and Amsterdam two years later, where a much more efficient oil-powered lamp was developed. A small city like Leipzig in central Germany employed 100 men to tend to 700 lamps. London didn't join their ranks until 1684 but by the end of the century, more than 50 of Europe's major towns and cities were lit at night. Night became fashionable and spending hours lying in bed was considered a waste of time.

"People were becoming increasingly time-conscious and sensitive to efficiency, certainly before the 19th Century," says Roger Ekirch. "But the industrial revolution intensified that attitude by leaps and bounds." Strong evidence of this shifting attitude is contained in a medical journal from 1829 which urged parents to force their children out of a pattern of first and second sleep. "If no disease or accident there intervene, they will need no further repose than that obtained in their first sleep."

Today, most people seem to have adapted quite well to the eight-hour sleep, but Ekirch believes many sleeping problems may have roots in the human body's natural preference for segmented sleep as well as the ubiquity of artificial light. This could be the root of a condition called sleep maintenance insomnia, where people wake during the night and have trouble getting back to sleep, he suggests. The condition first appears in literature at the end of the 19th Century, at the same time as accounts of segmented sleep disappear.

SubQuestion No : 152

Q.1  
52 Which of the following is NOT true regarding the nights in 1920s in Europe?

- Ans
- 1. Mostly people of disrepute haunted the streets at night.
  - 2. Nights became a time for legitimate activity
  - 3. Protestants and Catholics started holding secret services at night.
  - 4. Socializing at night became common among all classes.

Question ID : 98958011703

Status : Answered

Chosen Option : 1

Comprehension:

KD JOB UPDATES



Read the following passage and answer the questions given after it.

By the 1920s the improvements in street lighting, domestic lighting and a surge in coffee houses - which were sometimes open all night - was complete. As the night became a place for legitimate activity, the length of time people could dedicate to rest dwindled." Evening's Empire puts forward an account of how this happened. "Associations with night before the 17th Century were not good," it says. "The night was a place populated by people of disrepute - criminals, prostitutes and drunks. Even the wealthy, who could afford candlelight, had better things to spend their money on. There was no prestige or social value associated with staying up all night."

That changed in the wake of the Reformation and the counter-Reformation. Protestants and Catholics became accustomed to holding secret services at night. If earlier the night had belonged to reprobates, now respectable people became accustomed to exploiting the hours of darkness. This trend migrated to the social sphere too, but only for those who could afford to live by candlelight. With the advent of street lighting, however, socializing at night began to filter down through the classes.

In 1667, Paris became the first city in the world to light its streets, using wax candles in glass lamps. It was followed by Lille in the same year and Amsterdam two years later, where a much more efficient oil-powered lamp was developed. A small city like Leipzig in central Germany employed 100 men to tend to 700 lamps. London didn't join their ranks until 1684 but by the end of the century, more than 50 of Europe's major towns and cities were lit at night. Night became fashionable and spending hours lying in bed was considered a waste of time.

"People were becoming increasingly time-conscious and sensitive to efficiency, certainly before the 19th Century," says Roger Ekirch. "But the industrial revolution intensified that attitude by leaps and bounds." Strong evidence of this shifting attitude is contained in a medical journal from 1829 which urged parents to force their children out of a pattern of first and second sleep. "If no disease or accident there intervene, they will need no further repose than that obtained in their first sleep."

Today, most people seem to have adapted quite well to the eight-hour sleep, but Ekirch believes many sleeping problems may have roots in the human body's natural preference for segmented sleep as well as the ubiquity of artificial light. This could be the root of a condition called sleep maintenance insomnia, where people wake during the night and have trouble getting back to sleep, he suggests. The condition first appears in literature at the end of the 19th Century, at the same time as accounts of segmented sleep disappear.

SubQuestion No : 153

Q.1  
53 Which of the following phenomena helped class-division vanish vis-à-vis nightlife?

- Ans
- 1. Counter-reformation
  - 2. Reformation



✔ 3. Streetlights

✘ 4. Cheaper candles

Question ID : 98958011704

Status : Answered

Chosen Option : 2

Comprehension:

KD JOB UPDATES

Read the following passage and answer the questions given after it.

By the 1920s the improvements in street lighting, domestic lighting and a surge in coffee houses - which were sometimes open all night - was complete. As the night became a place for legitimate activity, the length of time people could dedicate to rest dwindled." Evening's Empire puts forward an account of how this happened. "Associations with night before the 17th Century were not good," it says. "The night was a place populated by people of disrepute - criminals, prostitutes and drunks. Even the wealthy, who could afford candlelight, had better things to spend their money on. There was no prestige or social value associated with staying up all night."

That changed in the wake of the Reformation and the counter-Reformation. Protestants and Catholics became accustomed to holding secret services at night. If earlier the night had belonged to reprobates, now respectable people became accustomed to exploiting the hours of darkness. This trend migrated to the social sphere too, but only for those who could afford to live by candlelight. With the advent of street lighting, however, socializing at night began to filter down through the classes.


In 1667, Paris became the first city in the world to light its streets, using wax candles in glass lamps. It was followed by Lille in the same year and Amsterdam two years later, where a much more efficient oil-powered lamp was developed. A small city like Leipzig in central Germany employed 100 men to tend to 700 lamps. London didn't join their ranks until 1684 but by the end of the century, more than 50 of Europe's major towns and cities were lit at night. Night became fashionable and spending hours lying in bed was considered a waste of time.

"People were becoming increasingly time-conscious and sensitive to efficiency, certainly before the 19th Century," says Roger Ekirch. "But the industrial revolution intensified that attitude by leaps and bounds." Strong evidence of this shifting attitude is contained in a medical journal from 1829 which urged parents to force their children out of a pattern of first and second sleep. "If no disease or accident there intervene, they will need no further repose than that obtained in their first sleep."

Today, most people seem to have adapted quite well to the eight-hour sleep, but Ekirch believes many sleeping problems may have roots in the human body's natural preference for segmented sleep as well as the ubiquity of artificial light. This could be the root of a condition called sleep maintenance insomnia, where people wake during the night and have trouble getting back to sleep, he suggests. The condition first appears in literature at the end of the 19th Century, at the same time as accounts of segmented sleep disappear.

SubQuestion No : 154

Q.1  
54 The author observes, "by the end of the century, more than 50 of Europe's major towns and cities were lit at night." Which century was he referring to?

Ans  1. 17<sup>th</sup> century

2. 19<sup>th</sup> century

3. 16<sup>th</sup> century

4. 20<sup>th</sup> century

Question ID : 98958011705

Status : Answered

Chosen Option : 4

Comprehension:

KD JOB UPDATES

Read the following passage and answer the questions given after it.

By the 1920s the improvements in street lighting, domestic lighting and a surge in coffee houses - which were sometimes open all night - was complete. As the night became a place for legitimate activity, the length of time people could dedicate to rest dwindled." Evening's Empire puts forward an account of how this happened. "Associations with night before the 17th Century were not good," it says. "The night was a place populated by people of disrepute - criminals, prostitutes and drunks. Even the wealthy, who could afford candlelight, had better things to spend their money on. There was no prestige or social value associated with staying up all night."

That changed in the wake of the Reformation and the counter-Reformation. Protestants and Catholics became accustomed to holding secret services at night. If earlier the night had belonged to reprobates, now respectable people became accustomed to exploiting the hours of darkness. This trend migrated to the social sphere too, but only for those who could afford to live by candlelight. With the advent of street lighting, however, socializing at night began to filter down through the classes.

In 1667, Paris became the first city in the world to light its streets, using wax candles in glass lamps. It was followed by Lille in the same year and Amsterdam two years later, where a much more efficient oil-powered lamp was developed. A small city like Leipzig in central Germany employed 100 men to tend to 700 lamps. London didn't join their ranks until 1684 but by the end of the century, more than 50 of Europe's major towns and cities were lit at night. Night became fashionable and spending hours lying in bed was considered a waste of time.


"People were becoming increasingly time-conscious and sensitive to efficiency, certainly before the 19th Century," says Roger Ekirch. "But the industrial revolution intensified that attitude by leaps and bounds." Strong evidence of this shifting attitude is contained in a medical journal from 1829 which urged parents to force their children out of a pattern of first and second sleep. "If no disease or accident there intervene, they will need no further repose than that obtained in their first sleep."


Today, most people seem to have adapted quite well to the eight-hour sleep, but Ekirch believes many sleeping problems may have roots in the human body's natural preference for segmented sleep as well as the ubiquity of artificial light. This could be the root of a condition called sleep maintenance insomnia, where people wake during the night and have trouble getting back to sleep, he suggests. The condition first appears in literature at the end of the 19th Century, at the same time as accounts of segmented sleep disappear.

SubQuestion No : 155

Q.1  
55 In which city were 100 men employed to tend to 700 lamps?

- Ans
- 1. London
  - 2. Lille

 3. Amsterdam

 4. Leipzig

Question ID : 98958011706

Status : Answered

Chosen Option : 4

Comprehension:

KD JOB UPDATES



Read the following passage and answer the questions given after it.

By the 1920s the improvements in street lighting, domestic lighting and a surge in coffee houses - which were sometimes open all night - was complete. As the night became a place for legitimate activity, the length of time people could dedicate to rest dwindled." Evening's Empire puts forward an account of how this happened. "Associations with night before the 17th Century were not good," it says. "The night was a place populated by people of disrepute - criminals, prostitutes and drunks. Even the wealthy, who could afford candlelight, had better things to spend their money on. There was no prestige or social value associated with staying up all night."

That changed in the wake of the Reformation and the counter-Reformation. Protestants and Catholics became accustomed to holding secret services at night. If earlier the night had belonged to reprobates, now respectable people became accustomed to exploiting the hours of darkness. This trend migrated to the social sphere too, but only for those who could afford to live by candlelight. With the advent of street lighting, however, socializing at night began to filter down through the classes.

In 1667, Paris became the first city in the world to light its streets, using wax candles in glass lamps. It was followed by Lille in the same year and Amsterdam two years later, where a much more efficient oil-powered lamp was developed. A small city like Leipzig in central Germany employed 100 men to tend to 700 lamps. London didn't join their ranks until 1684 but by the end of the century, more than 50 of Europe's major towns and cities were lit at night. Night became fashionable and spending hours lying in bed was considered a waste of time.

"People were becoming increasingly time-conscious and sensitive to efficiency, certainly before the 19th Century," says Roger Ekirch. "But the industrial revolution intensified that attitude by leaps and bounds." Strong evidence of this shifting attitude is contained in a medical journal from 1829 which urged parents to force their children out of a pattern of first and second sleep. "If no disease or accident there intervene, they will need no further repose than that obtained in their first sleep."

Today, most people seem to have adapted quite well to the eight-hour sleep, but Ekirch believes many sleeping problems may have roots in the human body's natural preference for segmented sleep as well as the ubiquity of artificial light. This could be the root of a condition called sleep maintenance insomnia, where people wake during the night and have trouble getting back to sleep, he suggests. The condition first appears in literature at the end of the 19th Century, at the same time as accounts of segmented sleep disappear.

SubQuestion No : 156

Q.1  
56 Which is the most significant cause of sleep maintenance insomnia?

- Ans
- 1. ubiquity of artificial light
  - 2. waking up during the night

3. a growing belief in eight-hour-sleep blocs
4. ignoring the human body's natural preference for segmented sleep

Question ID : 98958011707  
Status : Answered  
Chosen Option : 4

Q.1  
57 Select the wrongly spelt word.

- Ans  1. miniature
2. municipality
3. monopoly
4. manpulates

Question ID : 98958011699  
Status : Answered  
Chosen Option : 1

Q.1  
58 Identify the segment in the sentence, which contains the grammatical error.

The problem of world hunger arises because of the economic inequality that distort food distribution.

- Ans  1. that distort food distribution.
2. The problem of
3. because of the economic inequality
4. world hunger arises

Question ID : 98958011660  
Status : Answered  
Chosen Option : 1

Q.1  
59 Identify the segment in the sentence, which contains the grammatical error.

Economic growth is sustainable only if all countries has food security.

- Ans  1. sustainable only if
2. Economic growth is
3. has food security.
4. all countries

Question ID : 98958011659  
Status : Answered  
Chosen Option : 3

Q.1  
60 Select the synonym of the given word

PLEDGED

Ans

- 1. promised
- 2. respected
- 3. fulfilled
- 4. honored

Question ID : 98958011680  
Status : Answered  
Chosen Option : 1

Q.1  
61 Select the most appropriate meaning of the idiom.

Go against the grain.

- Ans
- 1. Something that is ugly and unpopular
  - 2. Something in conflict with one's value system
  - 3. Something that we can accept with difficulty
  - 4. Something done deliberately

Question ID : 98958011687  
Status : Answered  
Chosen Option : 2

Q.1  
62 Select the most appropriate meaning of the given idiom.

To beat a dead horse

- Ans
- 1. A significant effort
  - 2. A futile effort
  - 3. A deliberate effort
  - 4. A joint effort

Question ID : 98958011688  
Status : Answered  
Chosen Option : 2

Q.1  
63 Select the most appropriate word for the given group of words.

constitutional right to cast vote

- Ans
- 1. licensed
  - 2. franking
  - 3. franchise
  - 4. duty

Question ID : 98958011696  
Status : Answered  
Chosen Option : 3



Q.1  
64 Select the antonym of the given word.

PROVISIONAL

- Ans
- 1. planned
  - 2. permanent
  - 3. insured
  - 4. supplied

Question ID : 98958011684  
Status : Answered  
Chosen Option : 2

Q.1  
65 Select the most appropriate word for the given group of words.

power of reading thoughts of others

- Ans
- 1. telepathy
  - 2. medium
  - 3. astrology
  - 4. instinct

Question ID : 98958011693  
Status : Answered  
Chosen Option : 1

Q.1  
66 Select the most appropriate meaning of the given idiom.

Bite the bullet

- Ans
- 1. to restrain yourself from doing something unpleasant
  - 2. to force yourself to do something unpleasant
  - 3. to amuse yourself by doing something unpleasant
  - 4. to dislike yourself for having done something unpleasant

Question ID : 98958011690  
Status : Answered  
Chosen Option : 1

Q.1  
67 Select the most appropriate option to substitute the underlined segment in the given sentence. If there is no need to substitute it, Select No improvement.

With cloth in demand both at home, where the population was increasing, and abroad, where British colonies were a captive market, improving spinning methods were essential to meet the demand.

- Ans
- 1. improve spinning methods were essential
  - 2. improved spinning methods were essential
  - 3. improved spinning methods was essential
  - 4. No improvement

Question ID : 98958011661  
Status : Answered  
Chosen Option : 2

Q.1  
68 Select the most appropriate word for the given group of words.

a place for the collection of dried plants

- Ans
- 1. museum
  - 2. aquarium
  - 3. herbarium
  - 4. flora

Question ID : 98958011692  
Status : Answered  
Chosen Option : 3

Q.1  
69 Select the synonym of the given word.

BENEFICIARIES

- Ans
- 1. addressers
  - 2. recipients
  - 3. profiteers
  - 4. donors

Question ID : 98958011677  
Status : Answered  
Chosen Option : 3

Q.1  
70 Select the most appropriate option to substitute the underlined segment in the given sentence. If there is no need to substitute it, Select No improvement.

With Mumbai's mad rush and heavy traffic, it becomes extremely difficult for people to reach their destination on time.

- Ans
- 1. reached their destination on time.
  - 2. to reaching their destination on time.
  - 3. to reach their destination at time.
  - 4. No improvement

Question ID : 98958011665  
Status : Answered  
Chosen Option : 4

Q.1  
71 Select the synonym of the given word

PREVENTIVE

- Ans
- 1. prophetic
  - 2. prepared



- 3. predicted
- 4. protective

Question ID : 98958011681  
Status : Answered  
Chosen Option : 4

Q.1 Select the most appropriate word to fill in the blank.

72

During the Great Depression, America's dance marathon craze was more of a \_\_\_\_\_ strategy than a form of \_\_\_\_\_.

- Ans
- 1. basic; entertainment
  - 2. fundamental; celebration
  - 3. survival; entertainment
  - 4. survival; education

Question ID : 98958011667  
Status : Answered  
Chosen Option : 3

Q.1 Select the synonym of the given word.

73

NEGLECTED

- Ans
- 1. superfluous
  - 2. unknown
  - 3. ignored
  - 4. negated

Question ID : 98958011678  
Status : Answered  
Chosen Option : 3

Q.1 Select the antonym of the given word.

74

PROVINCIAL

- Ans
- 1. pastoral
  - 2. public
  - 3. rustic
  - 4. metropolitan

Question ID : 98958011683  
Status : Answered  
Chosen Option : 4

Q.1 Select the wrongly spelt word.

75

- Ans
- 1. fasinated

- 2. fashion
- 3. facsimile
- 4. fastidious

Question ID : 98958011698  
Status : Answered  
Chosen Option : 1

Q.1 76 Select the most appropriate option to substitute the underlined segment in the given sentence. If there is no need to substitute it, Select No improvement.

Eighteenth-century machines typically used water power, hence the early factories was located on the fast-flowing rivers.

- Ans
- 1. were located near the fast-flowing rivers.
  - 2. was located near the fast-flowing rivers.
  - 3. were located on the fast-flowing rivers.
  - 4. No improvement

Question ID : 98958011663  
Status : Answered  
Chosen Option : 1

Q.1 77 Select the most appropriate word to fill in the blank.

Trachoma is a debilitating and painful \_\_\_\_\_ which can cause the eyelashes to turn inwards and stab the eye.

- Ans
- 1. taint
  - 2. infection
  - 3. contagion
  - 4. factor

Question ID : 98958011670  
Status : Answered  
Chosen Option : 2

Q.1 78 Select the most appropriate meaning of the given idiom.

Caught red-handed

- Ans
- 1. To discover a murderer using the clues
  - 2. To catch a thief who steals red paints
  - 3. To catch someone doing something illegal
  - 4. To try to arrest someone without any evidence

Question ID : 98958011689  
Status : Answered  
Chosen Option : 3

Q.1  
79

Select the most appropriate meaning of the given idiom.

Always a bridesmaid never a bride

- Ans
- 1. Someone who always comes second
  - 2. Someone who is born unlucky
  - 3. Someone who fulfills his or her potential
  - 4. Someone who does not deserve to win

Question ID : 98958011691  
Status : Answered  
Chosen Option : 4

Q.1  
80 Select the wrongly spelt word.

- Ans
- 1. parakeets
  - 2. pupeteer
  - 3. puppies
  - 4. parapet

Question ID : 98958011700  
Status : Answered  
Chosen Option : 4

Q.1  
81 Select the antonym of the given word.

SUBDUED

- Ans
- 1. subtle
  - 2. excited
  - 3. hushed
  - 4. motivated

Question ID : 98958011682  
Status : Answered  
Chosen Option : 4

Q.1 Identify the segment in the sentence, which contains the grammatical error.

82

That his body did not decompose confirmed what the Greeks thought about him and what Alexander use to believe about himself—that he was not an ordinary man, but a god.

- Ans
- 1. thought about him
  - 2. he was not an ordinary man
  - 3. use to believe about himself
  - 4. his body did not decompose

Question ID : 98958011657  
Status : Answered  
Chosen Option : 3

Q.1 Identify the segment in the sentence, which contains the grammatical error.

83

When Alexander the Great died in Babylon in 323 B.C., his body didn't begin to show signs of decomposition for a full six day, according to historical accounts.

Ans

- 1. his body didn't begin to show
- 2. When Alexander the Great died
- 3. signs of decomposition for a full six day
- 4. according to historical accounts

Question ID : 98958011656

Status : Answered

Chosen Option : 3

Q.1 Select the wrongly spelt word.

84

Ans

- 1. indicate
- 2. innovate
- 3. invite
- 4. innundate

Question ID : 98958011697

Status : Answered

Chosen Option : 4

Q.1 Select the most appropriate word for the given group of words.

85

excessive bureaucratic fuss

Ans

- 1. footnotes
- 2. red-tape
- 3. fastidious
- 4. officious

Question ID : 98958011694

Status : Answered

Chosen Option : 2

Q.1 Select the most appropriate word to fill in the blank.

86

Moisture created \_\_\_\_\_ multitudes of visitors over the years has damaged King Tut's tomb more than any vandalism and so conservators are working to \_\_\_\_\_ the historic monument \_\_\_\_\_ the impact of heavy-breathing, heavy-sweating tourists.

Ans

- 1. by; guard; against
- 2. by; dry; off
- 3. from; dry; against
- 4. from; guard; from

Question ID : 98958011666

Status : Answered

Chosen Option : 1

Q.1  
87 Select the most appropriate word for the given group of words.

a book that contains information on various subjects

- Ans
- 1. magazine
  - 2. omnibus
  - 3. guide
  - 4. encyclopedia

Question ID : 98958011695  
Status : Answered  
Chosen Option : 4

Q.1  
88 Select the antonym of the given word.

INDICTED

- Ans
- 1. imprisoned
  - 2. examined
  - 3. hanged
  - 4. released

Question ID : 98958011685  
Status : Answered  
Chosen Option : 3

Q.1  
89 Select the most appropriate word to fill in the blank.

Scientists and politicians are \_\_\_\_\_ becoming aware of another factor that could seriously threaten the \_\_\_\_\_ balance between production and consumption of food and climate change.

- Ans
- 1. duo; questionable
  - 2. alike; shaky
  - 3. both; tenuous
  - 4. alike; feeble

Question ID : 98958011668  
Status : Answered  
Chosen Option : 3

Q.1  
90 Select the most appropriate option to substitute the underlined segment in the given sentence. If there is no need to substitute it, Select No improvement.

The growing demand for cotton spurred the Industrial Revolution in Britain and inducing Southern planters in America to grows more cotton.

- Ans
- 1. No improvement
  - 2. inducing Southern planters in America grew more cotton
  - 3. induce Southern planters in America to grow more cotton
  - 4. induced Southern planters in America to grow more cotton



Question ID : 98958011662

Status : Answered

Chosen Option : 4

**Comprehension:**

In the following passage some words have been deleted. Fill in the blanks with the help of the alternatives given. Select the most appropriate option for each number.

Eating white bread and ready meals could be killing us, according to the first major study linking “ultra-processed” food with (1) \_\_\_\_\_ death. The study of 45,000 middle-aged people found that every 10 per cent increase in (2) \_\_\_\_\_ of “ultra-processed food” was linked to a 14 per cent (3) \_\_\_\_\_ risk of death within the next eight years. Previous research has linked consumption (4) \_\_\_\_\_ foods like white bread, ready meals, sausages, sugary cereals, fizzy drinks to a higher risk of high blood (5) \_\_\_\_\_ and cancer.

SubQuestion No : 191

Q.1  
91 Select the most appropriate option to fill in blank  
No.1.

- Ans
- 1. quiet
  - 2. early
  - 3. easy
  - 4. late

Question ID : 98958011672

Status : Answered

Chosen Option : 2

**Comprehension:**

In the following passage some words have been deleted. Fill in the blanks with the help of the alternatives given. Select the most appropriate option for each number.

Eating white bread and ready meals could be killing us, according to the first major study linking “ultra-processed” food with (1) \_\_\_\_\_ death. The study of 45,000 middle-aged people found that every 10 per cent increase in (2) \_\_\_\_\_ of “ultra-processed food” was linked to a 14 per cent (3) \_\_\_\_\_ risk of death within the next eight years. Previous research has linked consumption (4) \_\_\_\_\_ foods like white bread, ready meals, sausages, sugary cereals, fizzy drinks to a higher risk of high blood (5) \_\_\_\_\_ and cancer.

SubQuestion No : 192

Q.1  
92 Select the most appropriate option to fill in blank  
No.2.

- Ans
- 1. input
  - 2. digestion

3. making

4. intake

Question ID : 98958011673

Status : Answered

Chosen Option : 4

**Comprehension:**

In the following passage some words have been deleted. Fill in the blanks with the help of the alternatives given. Select the most appropriate option for each number.

Eating white bread and ready meals could be killing us, according to the first major study linking “ultra-processed” food with (1) \_\_\_\_\_ death. The study of 45,000 middle-aged people found that every 10 per cent increase in (2) \_\_\_\_\_ of “ultra-processed food” was linked to a 14 per cent (3) \_\_\_\_\_ risk of death within the next eight years. Previous research has linked consumption (4) \_\_\_\_\_ foods like white bread, ready meals, sausages, sugary cereals, fizzy drinks to a higher risk of high blood (5) \_\_\_\_\_ and cancer.

SubQuestion No : 193

Q.1  
93 Select the most appropriate option to fill in blank  
No.3.

- Ans
- 1. declined
  - 2. decreased
  - 3. improved
  - 4. increased

Question ID : 98958011674

Status : Answered

Chosen Option : 4

**Comprehension:**

In the following passage some words have been deleted. Fill in the blanks with the help of the alternatives given. Select the most appropriate option for each number.

Eating white bread and ready meals could be killing us, according to the first major study linking “ultra-processed” food with (1) \_\_\_\_\_ death. The study of 45,000 middle-aged people found that every 10 per cent increase in (2) \_\_\_\_\_ of “ultra-processed food” was linked to a 14 per cent (3) \_\_\_\_\_ risk of death within the next eight years. Previous research has linked consumption (4) \_\_\_\_\_ foods like white bread, ready meals, sausages, sugary cereals, fizzy drinks to a higher risk of high blood (5) \_\_\_\_\_ and cancer.

SubQuestion No : 194

Q.1  
94 Select the most appropriate option to fill in blank  
No.4.

- Ans
- 1. on
  - 2. in
  - 3. from
  - 4. of

Question ID : 98958011675  
Status : Answered  
Chosen Option : 4

**Comprehension:**

In the following passage some words have been deleted. Fill in the blanks with the help of the alternatives given. Select the most appropriate option for each number.

Eating white bread and ready meals could be killing us, according to the first major study linking “ultra-processed” food with (1) \_\_\_\_\_ death. The study of 45,000 middle-aged people found that every 10 per cent increase in (2) \_\_\_\_\_ of “ultra-processed food” was linked to a 14 per cent (3) \_\_\_\_\_ risk of death within the next eight years. Previous research has linked consumption (4) \_\_\_\_\_ foods like white bread, ready meals, sausages, sugary cereals, fizzy drinks to a higher risk of high blood (5) \_\_\_\_\_ and cancer.

SubQuestion No : 195

Q.1  
95 Select the most appropriate option to fill in blank No.5.

- Ans
- 1. coagulation
  - 2. clotting
  - 3. pressure
  - 4. infection

Question ID : 98958011676  
Status : Answered  
Chosen Option : 3

Q.1  
96 Select the wrongly spelt word.

- Ans
- 1. elementary
  - 2. alleviasion
  - 3. olfactory
  - 4. election

Question ID : 98958011701  
Status : Answered  
Chosen Option : 2

Q.1  
97 Identify the segment in the sentence, which contains the grammatical error.

Hemophilia, a blood clotting disorder, can be passed about the maternal line within families; men are more likely to develop it, while women are usually carriers.

- Ans
- 1. likely to develop it
  - 2. a blood clotting disorder
  - 3. can be passed about
  - 4. the maternal line

Question ID : 98958011658  
Status : Answered  
Chosen Option : 3

Q.1 98 Select the most appropriate option to substitute the underlined segment in the given sentence. If there is no need to substitute it, Select No improvement.

As a result of various inventions during Victoria's reign, travel and communication became better and improved sanitation techniques turn filthy streets in clean roads.

- Ans
- 1. turning filthy streets in clean roads.
  - 2. turn filthy streets into clean roads.
  - 3. No improvement
  - 4. turned filthy streets into clean roads.

Question ID : 98958011664  
Status : Answered  
Chosen Option : 4

Q.1 99 Select the synonym of the given word.

DISPROPORTIONATELY

- Ans
- 1. unscientifically
  - 2. unreasonably
  - 3. unvaryingly
  - 4. unknowingly

Question ID : 98958011679  
Status : Answered  
Chosen Option : 3

Q.2 00 Select the antonym of the given word.

ASSAULT

- Ans
- 1. attack
  - 2. retreat
  - 3. pacify
  - 4. affront

Question ID : 98958011686  
Status : Answered  
Chosen Option : 3

KD JOB UPDATES