

**DELHI DEVELOPMENT AUTHORITY**  
**RECRUITMENT CELL**  
**VIKAS SADAN, INA, NEW DELHI - 110023**  
**(<https://www.dda.gov.in>)**

**Advertisement No. 02/2023/Recrtt. Cell/Pers./DDA**

Participant ID	
Participant Name	
Test Center Name	
Test Date	20/08/2023
Test Time	4:30 PM - 6:30 PM
Subject	Patwari

Section : **General Awareness**

**Q.1 Where are the headquarters of NABFINS Limited (NABFINS) located?**

- Ans**  1. Cochin  
 2. Bengaluru  
 3. Chennai  
 4. Hyderabad

Question ID : **630680300179**

Option 1 ID : **6306801167620**

Option 2 ID : **6306801167622**

Option 3 ID : **6306801167621**

Option 4 ID : **6306801167619**

Status : **Answered**

Chosen Option : **2**

**Q.2** Gayatribala Panda won the Sahitya Akademi Awards 2022 for the Odia language for which type of literary work?

- Ans**
- 1. Play
  - 2. Poetry
  - 3. Short story
  - 4. Novel

Question ID : 630680300184

Option 1 ID : 6306801167640

Option 2 ID : 6306801167639

Option 3 ID : 6306801167642

Option 4 ID : 6306801167641

Status : Answered

Chosen Option : 3

**Q.3** The third edition of the Khelo India University Games 2023 started in which of the following states?

- Ans**
- 1. Uttar Pradesh
  - 2. Maharashtra
  - 3. Haryana
  - 4. Madhya Pradesh

Question ID : 630680300174

Option 1 ID : 6306801167601

Option 2 ID : 6306801167602

Option 3 ID : 6306801167599

Option 4 ID : 6306801167600

Status : Answered

Chosen Option : 1

**Q.4 Which of the following is NOT a criteria evolved by the Government of India to determine declaration of a language as a Classical Language?**

- Ans**
- 1. The literary tradition must be original and not borrowed from another speech community.
  - 2. High antiquity of its early texts/recorded history over a period of 1500-2000 years
  - 3. A body of ancient literature/texts, which is considered a valuable heritage by generations of speakers
  - 4. The classical language and literature being distinct from modern, there should not be discontinuity between the classical language and its later forms or its offshoots

Question ID : 630680300185

Option 1 ID : 6306801167645

Option 2 ID : 6306801167643

Option 3 ID : 6306801167644

Option 4 ID : 6306801167646

Status : Answered

Chosen Option : 4

**Q.5 The origin of Directive Principles of State Policy can be traced back to \_\_\_\_\_.**

- Ans**
- 1. Government of India Act 1919
  - 2. Karachi Resolution
  - 3. Pune Pact
  - 4. Second Round Table Conference

Question ID : 630680300189

Option 1 ID : 6306801167660

Option 2 ID : 6306801167659

Option 3 ID : 6306801167661

Option 4 ID : 6306801167662

Status : Answered

Chosen Option : 3

**Q.6** Based on his studies, who among the following showed that sunlight is essential to the plant process that somehow purifies the air fouled by burning candles or breathing animals?

- Ans**
- 1. Rudolph A Marcus
  - 2. Antonie Philips van Leeuwenhoek
  - 3. Selman Abraham Waksman
  - 4. Jan Ingenhousz

Question ID : 630680300192

Option 1 ID : 6306801167674

Option 2 ID : 6306801167672

Option 3 ID : 6306801167673

Option 4 ID : 6306801167671

Status : Answered

Chosen Option : 1

**Q.7** Who was the first female nominated member of the Rajya Sabha?

- Ans**
- 1. Maragatham Chandrasekhar
  - 2. Vyjayantimala Bali
  - 3. Shakuntala Paranjpye
  - 4. Rukmini Devi Arundale

Question ID : 630680300191

Option 1 ID : 6306801167670

Option 2 ID : 6306801167668

Option 3 ID : 6306801167667

Option 4 ID : 6306801167669

Status : Answered

Chosen Option : 3

Q.8 'My Music, My Life' is an autobiography by which of the following Indian musicians?

Ans  1. Pandit Hariprasad Chaurasia

2. Pandit Shivkumar Sharma

3. Ustad Amjad Ali Khan

4. Pandit Ravi Shankar

Question ID : 630680300183

Option 1 ID : 6306801167637

Option 2 ID : 6306801167638

Option 3 ID : 6306801167636

Option 4 ID : 6306801167635

Status : Answered

Chosen Option : 4

Q.9 The deposits made under the 'Mahila Samman Savings Certificate 2023' shall bear interest at the rate of \_\_\_\_\_.

Ans  1. 8.0 per cent per annum

2. 7.5 per cent per annum

3. 7.0 per cent per annum

4. 8.5 per cent per annum

Question ID : 630680300178

Option 1 ID : 6306801167617

Option 2 ID : 6306801167616

Option 3 ID : 6306801167615

Option 4 ID : 6306801167618

Status : Answered

Chosen Option : 2

Q.10 What is the name of India's first ChatGPT-powered AI chatbot launched by financial technology company Velocity in February 2023?

- Ans  1. MEENA  
 2. LEXI  
 3. ROSE  
 4. SIRI

Question ID : 630680300176

Option 1 ID : 6306801167609

Option 2 ID : 6306801167610

Option 3 ID : 6306801167608

Option 4 ID : 6306801167607

Status : Answered

Chosen Option : 1

Q.11 Which pair became the first Indian men's doubles pair to secure a medal at Badminton Asia Championships 2023 in Dubai?

- Ans  1. Satwiksairaj Rankireddy and Chirag Shetty  
 2. Dipu Ghosh and Raman Ghosh  
 3. Lakshya Sen and HS Prannoy  
 4. Kidambi Srikanth and Mithun Manjunath

Question ID : 630680300175

Option 1 ID : 6306801167604

Option 2 ID : 6306801167603

Option 3 ID : 6306801167605

Option 4 ID : 6306801167606

Status : Answered

Chosen Option : 4

Q.12 The Dutch East India Company established its first factory at which place in 1606?

Ans  1. Petapuli

2. Masulipatnam

3. Cambay

4. Nagapatinam

Question ID : 630680300181

Option 1 ID : 6306801167627

Option 2 ID : 6306801167628

Option 3 ID : 6306801167630

Option 4 ID : 6306801167629

Status : Answered

Chosen Option : 3

Q.13 Which of the following states has the second largest number of members in Rajya Sabha?

Ans  1. Maharashtra

2. Uttar Pradesh

3. Andhra Pradesh

4. Bihar

Question ID : 630680300190

Option 1 ID : 6306801167664

Option 2 ID : 6306801167663

Option 3 ID : 6306801167666

Option 4 ID : 6306801167665

Status : Answered

Chosen Option : 2

Q.14 'Kaiser-i-Hind' is a \_\_\_\_\_ found mainly in Eastern Himalayas (West Bengal, Meghalaya, Assam, Sikkim and Manipur) in India.

- Ans  1. frog  
 2. butterfly  
 3. duck  
 4. crane

Question ID : 630680300187

Option 1 ID : 6306801167651

Option 2 ID : 6306801167654

Option 3 ID : 6306801167653

Option 4 ID : 6306801167652

Status : Answered

Chosen Option : 2

Q.15 The 'Nua Khai' festival is a harvest festival of which of the following states?

- Ans  1. Tripura  
 2. Odisha  
 3. Nagaland  
 4. West Bengal

Question ID : 630680300186

Option 1 ID : 6306801167648

Option 2 ID : 6306801167649

Option 3 ID : 6306801167650

Option 4 ID : 6306801167647

Status : Answered

Chosen Option : 2



Q.16 Which of the following methods can be used to control deficient demand in the economy?

- Ans  1. Purchase of government securities
2. Rise in bank rate
3. Decrease in government expenditure
4. Rise in tax rates

Question ID : 630680300180

Option 1 ID : 6306801167626

Option 2 ID : 6306801167625

Option 3 ID : 6306801167624

Option 4 ID : 6306801167623

Status : Answered

Chosen Option : 1

Q.17 Muzaffer Jang emerged victorious in the \_\_\_\_\_ (1749) and appointed Dupleix as his deputy to all the lands to the South of the river Krishna.

- Ans  1. Battle of Kovelakonda
2. Battle of Amboor
3. Battle of Bobbili
4. Battle of Taiikota

Question ID : 630680300182

Option 1 ID : 6306801167631

Option 2 ID : 6306801167632

Option 3 ID : 6306801167634

Option 4 ID : 6306801167633

Status : Answered

Chosen Option : 1

Q.18 In which state was 'Mukhyamantri Vriksh Sampada Yojana' launched on the occasion of World Forest Day 2023?

Ans  1. Chhattisgarh

2. Rajasthan

3. Madhya Pradesh

4. Jharkhand

Question ID : 630680300177

Option 1 ID : 6306801167611

Option 2 ID : 6306801167612

Option 3 ID : 6306801167613

Option 4 ID : 6306801167614

Status : Answered

Chosen Option : 4

Q.19 Which of the following are the principal tributaries of Brahmaputra in India?

A- Puthimari

B- Pagladiya

C- Rango

D- Tsangpo

E- Gyamda

Ans  1. A and B

2. B and C

3. A and D

4. C and D

Question ID : 630680300188

Option 1 ID : 6306801167655

Option 2 ID : 6306801167656

Option 3 ID : 6306801167658

Option 4 ID : 6306801167657

Status : Answered

Chosen Option : 1

**Q.20** In animal cells, during which phase of the cell cycle in eukaryotes does the DNA replication begin in the nucleus and the centriole duplicate in the cytoplasm?

- Ans
- 1. S phase
  - 2. M phase
  - 3. G1 phase
  - 4. Interphase

Question ID : 630680300193

Option 1 ID : 6306801167678

Option 2 ID : 6306801167676

Option 3 ID : 6306801167677

Option 4 ID : 6306801167675

Status : Answered

Chosen Option : 1

Section : General Intelligence & Reasoning Ability

**Q.1** Refer to the following series and answer the question.

(Left) R Y 7 8 H & B 5 8 K L 3 2 B % & N M 3 4 % G H # K 6 7 & K & 5 W 8 F % V 4 6 A & L  
# T 4 U & % T @ 5 D % 6 F & # G 3 E @ (Right)

How many consonants in the above string are immediately followed by a symbol, and immediately preceded by an even number? (Consider counting from left to right only)

- Ans
- 1. 6
  - 2. 3
  - 3. 5
  - 4. 4

Question ID : 630680300202

Option 1 ID : 6306801167714

Option 2 ID : 6306801167711

Option 3 ID : 6306801167713

Option 4 ID : 6306801167712

Status : Answered

Chosen Option : 3

**Q.2** A & B means 'A is the father of B'.  
A + B means 'A is the daughter of B'.  
A @ B means 'A is the wife of B'.  
A % B means 'A is the sister of B'.  
A # B means 'A is the husband of B'.

If M # T % R + K @ L & N # G, then which of the following statements is correct?

- Ans**
- 1. K is the mother of M.
  - 2. L is the father-in-law of T.
  - 3. G is the daughter-in-law of K.
  - 4. N is the son-in-law of L.

Question ID : 630680300204

Option 1 ID : 6306801167719

Option 2 ID : 6306801167720

Option 3 ID : 6306801167722

Option 4 ID : 6306801167721

Status : Answered

Chosen Option : 4

**Q.3** Select the INCORRECT term in the following series.  
ALTN-7, DOWQ-17, GRZT-46, JUCW-132, MXFZ-389, PAJC-1165

- Ans**
- 1. MXFZ-389
  - 2. JUCW-132
  - 3. GRZT-46
  - 4. PAJC-1165

Question ID : 630680300201

Option 1 ID : 6306801167708

Option 2 ID : 6306801167709

Option 3 ID : 6306801167710

Option 4 ID : 6306801167707

Status : Answered

Chosen Option : 2

**Q.4** Each of K, L, M, N, O, P and R has an exam on a different day of a week starting on Monday and ending on the Sunday of the same week. Less than three persons have exams after P. Only three persons have exams before M. L's exam is immediately after M. P's exam is immediately before O. R's exam is immediately after N. K's exam is immediately after R. On which day is N's exam?

- Ans**  1. Monday  
 2. Wednesday  
 3. Tuesday  
 4. Friday

Question ID : 630680300196

Option 1 ID : 6306801167687

Option 2 ID : 6306801167689

Option 3 ID : 6306801167688

Option 4 ID : 6306801167690

Status : Answered

Chosen Option : 2

**Q.5** Ten boys named A, B, C, D, E, F, G, H, K and L are sitting around a circular table facing the centre. L is fourth to the right of D. E is second to the left of K. G is second to the left of D. F is third to the left of G. L is to the immediate right of B. E is third to the right of L. H and A are immediate neighbours. Who is sitting third to the right of C?

- Ans**  1. D  
 2. H  
 3. K  
 4. F

Question ID : 630680300195

Option 1 ID : 6306801167683

Option 2 ID : 6306801167685

Option 3 ID : 6306801167684

Option 4 ID : 6306801167686

Status : Answered

Chosen Option : 2

**Q.6** Pointing towards Sarika, Gathin said, "She is my mother's mother's son's daughter."  
How is Sarika's father related to Gathin's mother?

- Ans**
- 1. Father
  - 2. Son
  - 3. Cousin
  - 4. Brother

Question ID : 630680300203

Option 1 ID : 6306801167716

Option 2 ID : 6306801167715

Option 3 ID : 6306801167718

Option 4 ID : 6306801167717

Status : Answered

Chosen Option : 4

**Q.7** Which of the following interchanges of numbers and signs would make the given equation correct?

$$13 + 7 \times 156 \div 15 - 39 = 78$$

- Ans**
- 1. 15 and 13; + and  $\times$
  - 2. 39 and 156;  $\div$  and  $\times$
  - 3. 39 and 13;  $\div$  and  $-$
  - 4. 7 and 15;  $\times$  and  $\div$

Question ID : 630680300213

Option 1 ID : 6306801167757

Option 2 ID : 6306801167755

Option 3 ID : 6306801167758

Option 4 ID : 6306801167756

Status : Answered

Chosen Option : 1

**Q.8** Eight friends named P, Q, R, S, T, U, V and W are sitting in a straight line facing the north direction. Only P is sitting between V and W. V is sitting at one of the ends. Q is second to the left of U. W is third to the left of Q. Only R is sitting between W and T. Only two persons are sitting between P and T. How many persons are sitting towards the left of S?

- Ans**
- 1. Four
  - 2. Three
  - 3. Five
  - 4. Six

Question ID : 630680300194

Option 1 ID : 6306801167679

Option 2 ID : 6306801167682

Option 3 ID : 6306801167680

Option 4 ID : 6306801167681

Status : Answered

Chosen Option : 2

KD JOB UPDATES

**Q.9** Read the given statement(s) and conclusions carefully. Assuming that the information given in the statements is true, even if it appears to be at variance with commonly known facts, decide which of the given conclusions logically follow(s) from the statement(s).

**Statements:**

Some almonds are cashews.

All cashews are nuts.

All nuts are fruits.

**Conclusions:**

I. All cashews are fruits.

II. Some fruits are almonds.

III. All nuts are almonds.

**Ans** ✓ 1. Only I and II follow

✗ 2. Only II follows

✗ 3. Only II and III follow

✗ 4. Only I and III follow

Question ID : 630680300197

Option 1 ID : 6306801167693

Option 2 ID : 6306801167691

Option 3 ID : 6306801167694

Option 4 ID : 6306801167692

Status : Answered

Chosen Option : 1

**Q.10** If  $A = G$ ,  $F < M$ ,  $W > M$ ,  $T = L = W$ ,  $Y < L$ , and  $Y > A$ , then which of the following conclusions is correct?

**Ans** ✗ 1.  $W < Y$

✗ 2.  $G > L$

✗ 3.  $T < M$

✓ 4.  $F < L$

Question ID : 630680300199

Option 1 ID : 6306801167700

Option 2 ID : 6306801167701

Option 3 ID : 6306801167699

Option 4 ID : 6306801167702

Status : Answered

Chosen Option : 2



**Q.11** Four letter-cluster triads have been given, out of which three are alike in some manner and one is different. Select the one that is different.

- Ans  1. TORCH : LGVSX : OTEHC  
 2. MANGO : SKREQ : HPIVJ  
 3. SEIZE : IDMIW : RWNRD  
 4. DIVER : VIZMH : TNARE

Question ID : 630680300208

Option 1 ID : 6306801167737

Option 2 ID : 6306801167735

Option 3 ID : 6306801167736

Option 4 ID : 6306801167738

Status : Answered

Chosen Option : 1

**Q.12** Which number will replace the question mark (?) in the following series?  
40, 51, 66, 89, 128, ?

- Ans  1. 168  
 2. 218  
 3. 146  
 4. 199

Question ID : 630680300211

Option 1 ID : 6306801167748

Option 2 ID : 6306801167750

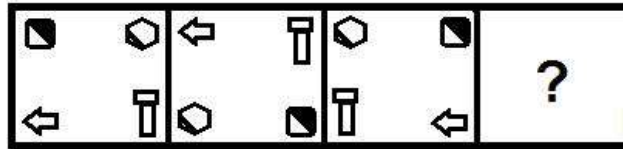
Option 3 ID : 6306801167747

Option 4 ID : 6306801167749

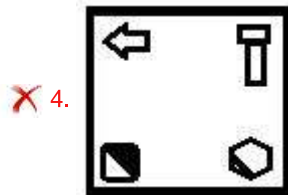
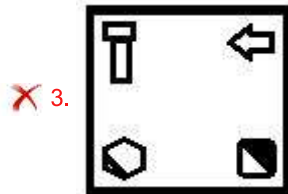
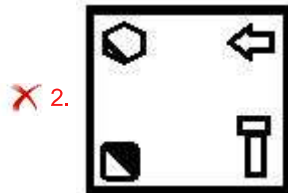
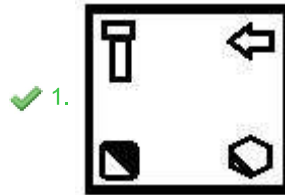
Status : Answered

Chosen Option : 4

Q.13 Select the figure that will replace the question mark (?) in the following figure series.



Ans



KD JOB UPDATES

Question ID : 630680300209

Option 1 ID : 6306801167740

Option 2 ID : 6306801167741

Option 3 ID : 6306801167739

Option 4 ID : 6306801167742

Status : Answered

Chosen Option : 1

Q.14 In a certain code, '&' means 'addition', '#' means 'multiplication', '@' means 'division', and '%' means 'subtraction'. Find the value of  $12 \# 55 @ (132 @ 12) + 77 \% (15 \# 4) \% 39 @ 13$ .

Ans  1.74

2.70

3.64

4.80

Question ID : 630680300212

Option 1 ID : 6306801167753

Option 2 ID : 6306801167752

Option 3 ID : 6306801167751

Option 4 ID : 6306801167754

Status : Answered

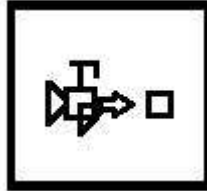
Chosen Option : 1

KD JOB UPDATES

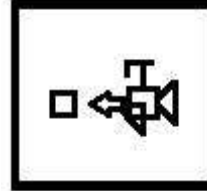
Q.15 Four figures have been given, out of which three are alike in some manner and one is different. Select the one that is different.

Ans

✗ 1.



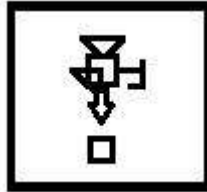
✓ 2.



✗ 3.



✗ 4.



KD JOB UPDATES

Question ID : 630680300210

Option 1 ID : 6306801167746

Option 2 ID : 6306801167745

Option 3 ID : 6306801167744

Option 4 ID : 6306801167743

Status : Answered

Chosen Option : 4

**Q.16** Four letter-clusters have been given, out of which three are alike in some manner and one is different. Select the one that is different.

- Ans
- 1. BFJN
  - 2. KOSW
  - 3. UYCF
  - 4. RVZD

Question ID : 630680300207

Option 1 ID : 6306801167733

Option 2 ID : 6306801167732

Option 3 ID : 6306801167731

Option 4 ID : 6306801167734

Status : Answered

Chosen Option : 2

**Q.17** Select the combination of letters that when sequentially placed in the blanks of the given series, will complete the series.

SD\_R\_WM\_DF\_EW\_SDF\_E\_M

- Ans
- 1. FESMMRW
  - 2. WESRMRW
  - 3. FESRMSW
  - 4. FESRMRW

Question ID : 630680300200

Option 1 ID : 6306801167706

Option 2 ID : 6306801167705

Option 3 ID : 6306801167703

Option 4 ID : 6306801167704

Status : Answered

Chosen Option : 4

Q.18 Select the word pair in which the words have the same relationship as in the word pair given below.

Euro : Austria

- Ans
- 1. Peru : Egypt
  - 2. Lira : Bhutan
  - 3. Dollar : Brazil
  - 4. Dinar : Kuwait

Question ID : 630680300206

Option 1 ID : 6306801167729

Option 2 ID : 6306801167727

Option 3 ID : 6306801167728

Option 4 ID : 6306801167730

Status : Answered

Chosen Option : 2

Q.19 Select the option that is related to the fifth letter cluster in the same way as the second letter cluster is related to the first letter cluster, and the fourth letter cluster is related to the third letter cluster.

CLAN : OXMZ :: DEUT : VWGF :: SOFT : ?

- Ans
- 1. LHVG
  - 2. GHLU
  - 3. LHGU
  - 4. HLHU

Question ID : 630680300205

Option 1 ID : 6306801167724

Option 2 ID : 6306801167726

Option 3 ID : 6306801167723

Option 4 ID : 6306801167725

Status : Answered

Chosen Option : 3

Q.20 If  $C < K = P$ ,  $R < G < C$ ,  $U = C < H = Y$ , then which of the following conclusions is NOT correct?

- Ans  1.  $G > P$   
 2.  $Y > U$   
 3.  $K > R$   
 4.  $P > C$

Question ID : 630680300198

Option 1 ID : 6306801167697

Option 2 ID : 6306801167698

Option 3 ID : 6306801167696

Option 4 ID : 6306801167695

Status : Answered

Chosen Option : 2

Section : Arithmetical & Numerical Ability

Q.1 In an election between two candidates, if one of the candidates got 7590 votes which were 60% of valid votes, then the number of valid votes received by the other candidate was:

- Ans  1. 5188  
 2. 5060  
 3. 5190  
 4. 5360

Question ID : 630680300220

Option 1 ID : 6306801167785

Option 2 ID : 6306801167783

Option 3 ID : 6306801167786

Option 4 ID : 6306801167784

Status : Answered

Chosen Option : 2

**Q.2** An amount of ₹6,750 is divided among A, B and C such that A receives  $\frac{3}{7}$  as much as B and C together and B receives  $\frac{7}{8}$  as much as A and C receive together. The sum of shares of A and B is:

- Ans
- 1. ₹5,395
  - 2. ₹5,025
  - 3. ₹5,172
  - 4. ₹5,175

Question ID : 630680300224

Option 1 ID : 6306801167801

Option 2 ID : 6306801167800

Option 3 ID : 6306801167802

Option 4 ID : 6306801167799

Status : Answered

Chosen Option : 3

**Q.3** If  $a : (b + c) = 5 : 8$  and  $c : (a + b) = 4 : 7$  and  $a + b + c = 3861$ , then what is the value of b ?

- Ans
- 1. 1485
  - 2. 1404
  - 3. 972
  - 4. 1562

Question ID : 630680300223

Option 1 ID : 6306801167797

Option 2 ID : 6306801167795

Option 3 ID : 6306801167796

Option 4 ID : 6306801167798

Status : Answered

Chosen Option : 3



Q.4 Simplify  $2.3 \times 4.9 - 1.8 \times 2.2 + 5.2 \times 3.7$ .

- Ans
- 1. 30.51
  - 2. 26.55
  - 3. 11.93
  - 4. 19.47

Question ID : 630680300216

Option 1 ID : 6306801167769

Option 2 ID : 6306801167770

Option 3 ID : 6306801167768

Option 4 ID : 6306801167767

Status : Answered

Chosen Option : 3

Q.5 A library has an average of 221 visitors on Sundays, an average of 249 visitors on Saturdays and an average of  $x$  visitors on other days in the month of January of a year, starting with Thursday. If the average number of visitors per day for the whole month is 195, then what is the value of  $x$  ?

- Ans
- 1. 178
  - 2. 179
  - 3. 181
  - 4. 177

Question ID : 630680300218

Option 1 ID : 6306801167776

Option 2 ID : 6306801167777

Option 3 ID : 6306801167778

Option 4 ID : 6306801167775

Status : Answered

Chosen Option : 4

**Q.6** A shopkeeper purchased 50 kg of sugar at ₹38 per kg and mixed it with 100 kg of sugar that was purchased at ₹41 per kg. At what rate per kg should he sell the mixture to gain 12%?

- Ans**
- 1. ₹45.80
  - 2. ₹46.80
  - 3. ₹43.80
  - 4. ₹44.80

Question ID : 630680300221

Option 1 ID : 6306801167788

Option 2 ID : 6306801167787

Option 3 ID : 6306801167790

Option 4 ID : 6306801167789

Status : Answered

Chosen Option : 4

**Q.7** The marked price of a book is ₹1,900. A man bought the same for ₹1,624.5 after getting two successive discounts, the first being 5%. What was the second discount rate?

- Ans**
- 1. 11%
  - 2. 10.5%
  - 3. 10%
  - 4. 11.5%

Question ID : 630680300222

Option 1 ID : 6306801167792

Option 2 ID : 6306801167791

Option 3 ID : 6306801167794

Option 4 ID : 6306801167793

Status : Answered

Chosen Option : 2

**Q.8** If the average of seven numbers 7, 9, 11, 15, 18, 19 and  $x$  is 13, then the value of  $x$  is:

- Ans**
- 1. 16
  - 2. 12
  - 3. 15
  - 4. 13

Question ID : 630680300217

Option 1 ID : 6306801167772

Option 2 ID : 6306801167771

Option 3 ID : 6306801167774

Option 4 ID : 6306801167773

Status : Answered

Chosen Option : 3

**Q.9** A certain sum amounts to ₹13,230 in one year at 10% p.a. interest compounded half yearly. What will be the compound interest on the same sum in 3 years at the same rate of interest, compounded yearly?

- Ans**
- 1. ₹3,792
  - 2. ₹3,729
  - 3. ₹3,972
  - 4. ₹3,974

Question ID : 630680300225

Option 1 ID : 6306801167803

Option 2 ID : 6306801167805

Option 3 ID : 6306801167806

Option 4 ID : 6306801167804

Status : Answered

Chosen Option : 4

**Q.10** A 240 m long train A passes a pole in 18 seconds and passes completely another train B running at 60 km/h in opposite direction, in 13 seconds. How much time (in seconds) will train B take to overtake 250 m long train C, running at 44 km/h, in the same direction?

- Ans**  1. 90  
 2. 75  
 3. 85  
 4. 80

Question ID : 630680300229

Option 1 ID : 6306801167822

Option 2 ID : 6306801167819

Option 3 ID : 6306801167821

Option 4 ID : 6306801167820

Status : Answered

Chosen Option : 1

**Q.11** When 2998, 3850 and 5341 are divided by a 2-digit number  $x$ , the remainder in each case is  $y$ . What is the value of  $(2x - 3y)$ ?

- Ans**  1. 49  
 2. 94  
 3. 86  
 4. 68

Question ID : 630680300215

Option 1 ID : 6306801167764

Option 2 ID : 6306801167765

Option 3 ID : 6306801167763

Option 4 ID : 6306801167766

Status : Answered

Chosen Option : 1

**Q.12** Pipe A can fill one-third of a tank in 6 hours and Pipe B can fill  $66\frac{2}{3}\%$  of the tank in 20 hours. Pipe C is an emptying

pipe. When the tank is empty and all the three pipes are opened together for 18 hours, then  $\frac{3}{10}$  of the tank remains empty. Pipe C alone can empty the full tank in:

- Ans**
- 1. 20 hours
  - 2. 24 hours
  - 3. 15 hours
  - 4. 18 hours

Question ID : 630680300227

Option 1 ID : 6306801167813

Option 2 ID : 6306801167814

Option 3 ID : 6306801167811

Option 4 ID : 6306801167812

Status : Answered

Chosen Option : 3

**Q.13** The surface area of a sphere is same as the curved surface area of a right circular cylinder whose height and diameter are 10 cm each. The radius of sphere is (in cm):

- Ans**
- 1. 4
  - 2. 2
  - 3. 5
  - 4. 3

Question ID : 630680300233

Option 1 ID : 6306801167837

Option 2 ID : 6306801167835

Option 3 ID : 6306801167838

Option 4 ID : 6306801167836

Status : Answered

Chosen Option : 3

Q.14 Find the value of  $2\sqrt{3} \times 7\sqrt{7} \times 3\sqrt{3} \times 4\sqrt{7}$ .

- Ans
- 1. 3568
  - 2. 3528
  - 3. 3258
  - 4. 3588

Question ID : 630680300214

Option 1 ID : 6306801167759

Option 2 ID : 6306801167762

Option 3 ID : 6306801167761

Option 4 ID : 6306801167760

Status : Answered

Chosen Option : 4

Q.15 Study the following graph and answer the question that follows.



Find the ratio of average sales of company P in 2012 to 2014 and the average sales of company Q in 2014 to 2016.

- Ans
- 1. 7 : 5
  - 2. 5 : 7
  - 3. 7 : 6
  - 4. 6 : 7

Question ID : 630680300230

Option 1 ID : 6306801167826

Option 2 ID : 6306801167824

Option 3 ID : 6306801167825

Option 4 ID : 6306801167823

Status : Answered

Chosen Option : 3

**Q.16** Study the following table and answer the question that follows.  
Number of computers sold by stores A and B from January to June 2022

Month	Store	
	A	B
January	220	150
February	180	210
March	240	200
April	210	240
May	340	290
June	320	300

The average number of computers (per month) sold by store B in February, April and June is what percentage of the total number of computers sold by store A in January, March and May?

- Ans** ✓ 1. 31.25%
- ✗ 2. 32.75%
- ✗ 3. 30%
- ✗ 4. 32%

Question ID : 630680300231

Option 1 ID : 6306801167828

Option 2 ID : 6306801167830

Option 3 ID : 6306801167827

Option 4 ID : 6306801167829

Status : Answered

Chosen Option : 4

**Q.17** A train covers the two platforms of length 1600 m and 800 m in 100 seconds and 60 seconds, respectively. What is the length of the train?

- Ans** ✗ 1. 410 m
- ✗ 2. 340 m
- ✓ 3. 400 m
- ✗ 4. 80 m

Question ID : 630680300228

Option 1 ID : 6306801167818

Option 2 ID : 6306801167817

Option 3 ID : 6306801167816

Option 4 ID : 6306801167815

Status : Answered

Chosen Option : 1

**Q.18** A is 20% less than B and C is 30% more than A. If B decreases by 20% and C increases by 10%, then C is what percentage more than B?

- Ans**
- 1. 45.75%
  - 2. 43%
  - 3. 47%
  - 4. 47.25%

Question ID : 630680300219

Option 1 ID : 6306801167782

Option 2 ID : 6306801167781

Option 3 ID : 6306801167779

Option 4 ID : 6306801167780

Status : Answered

Chosen Option : 3

**Q.19** A is thrice as good a workman as B and together they finish a piece of work in 15 days. In how many days will A alone finish the work.

- Ans**
- 1. 22
  - 2. 17
  - 3. 21
  - 4. 20

Question ID : 630680300226

Option 1 ID : 6306801167810

Option 2 ID : 6306801167807

Option 3 ID : 6306801167809

Option 4 ID : 6306801167808

Status : Answered

Chosen Option : 3



**Q.20** The perimeter of a square is 120 cm. The length of a rectangle is 5 cm more than the side of the square and the breadth of the rectangle is 6 cm less than the side of the square. The difference between the area of the square and that of the rectangle is approximately what percentage of the area of the rectangle?

- Ans**
- 1. 6.5%
  - 2. 6.2%
  - 3. 8%
  - 4. 7%

Question ID : 630680300232  
Option 1 ID : 6306801167832  
Option 2 ID : 6306801167831  
Option 3 ID : 6306801167834  
Option 4 ID : 6306801167833  
Status : Answered  
Chosen Option : 3

Section : Hindi (Language & Comprehension)

**Q.1** सावधान करने के अर्थ में किस मुहावरे का प्रयोग होता है?

- Ans**
- 1. कान खोलना
  - 2. कान खड़े होना
  - 3. कान फूँकना
  - 4. कान भरना

Question ID : 630680300168  
Option 1 ID : 6306801167577  
Option 2 ID : 6306801167578  
Option 3 ID : 6306801167576  
Option 4 ID : 6306801167575  
Status : Answered  
Chosen Option : 1

Q.2 'भविष्य में होने वाला' वाक्यांश के लिए सार्थक शब्द है-

- Ans
- 1. विगत
  - 2. गत
  - 3. प्रभावी
  - 4. भावी

Question ID : 630680300161

Option 1 ID : 6306801167548

Option 2 ID : 6306801167547

Option 3 ID : 6306801167549

Option 4 ID : 6306801167550

Status : Answered

Chosen Option : 4

Q.3 पदक्रम की दृष्टि से कौन सा वाक्य शुद्ध है?

- Ans
- 1. क्या रो रहा है पराग?
  - 2. रो रहा है क्या पराग?
  - 3. पराग क्या रो रहा है?
  - 4. क्या पराग रो रहा है?

Question ID : 630680300159

Option 1 ID : 6306801167540

Option 2 ID : 6306801167542

Option 3 ID : 6306801167539

Option 4 ID : 6306801167541

Status : Answered

Chosen Option : 4

Q.4 'नरपुंगव' का विलोम शब्द है-

Ans  1. नराधम

2. नरपति

3. नरेंद्र

4. नरश्रेष्ठ

Question ID : 630680300172

Option 1 ID : 6306801167593

Option 2 ID : 6306801167591

Option 3 ID : 6306801167592

Option 4 ID : 6306801167594

Status : Answered

Chosen Option : 4

Q.5 '..... करने से कार्य सिद्ध होते हैं।'

वाक्य के रिक्त स्थान के लिए सर्वाधिक उचित विकल्प का चयन करें।

Ans  1. उद्योग

2. प्रमाद

3. जुगाड़

4. उद्यम

Question ID : 630680300166

Option 1 ID : 6306801167568

Option 2 ID : 6306801167567

Option 3 ID : 6306801167570

Option 4 ID : 6306801167569

Status : Answered

Chosen Option : 1

Q.6 'जो दूसरों का भला चाहने वाला है' वाक्यांश के लिए सार्थक शब्द है-

- Ans  1. निहितार्थी  
 2. परार्थी  
 3. स्वार्थी  
 4. सेवार्थी

Question ID : 630680300160

Option 1 ID : 6306801167545

Option 2 ID : 6306801167544

Option 3 ID : 6306801167543

Option 4 ID : 6306801167546

Status : Answered

Chosen Option : 1

Q.7 प्रचलन में है कि पैसा सब काम करता है।  
वाक्य के रेखांकित अंश को उचित लोकोक्ति से प्रतिस्थापित करें।

- Ans  1. दाम बिगारे सबई काम  
 2. दाम सँवारे सबई काम  
 3. एक टकसाल के ढले हैं  
 4. गरीब की जोरू सबकी भाभी

Question ID : 630680300170

Option 1 ID : 6306801167583

Option 2 ID : 6306801167584

Option 3 ID : 6306801167585

Option 4 ID : 6306801167586

Status : Answered

Chosen Option : 2

Q.8 शेखर अज्ञेय के एक उपन्यास का ..... है।  
वाक्य के रिक्त स्थान के लिए सर्वाधिक उपयुक्त शब्द कौन सा है?

- Ans
- 1. अभिनेता
  - 2. मुखिया
  - 3. नायक
  - 4. नेता

Question ID : 630680300165

Option 1 ID : 6306801167565

Option 2 ID : 6306801167566

Option 3 ID : 6306801167564

Option 4 ID : 6306801167563

Status : Answered

Chosen Option : 1

Q.9 पदक्रम की दृष्टि से कौन सा वाक्य शुद्ध है?

- Ans
- 1. सखी चहेती पढ़ रही है शालिनी की।
  - 2. शालिनी की चहेती सखी पढ़ रही है।
  - 3. शालिनी की सखी चहेती पढ़ रही है।
  - 4. पढ़ रही है शालिनी की सखी चहेती।

Question ID : 630680300158

Option 1 ID : 6306801167538

Option 2 ID : 6306801167535

Option 3 ID : 6306801167536

Option 4 ID : 6306801167537

Status : Answered

Chosen Option : 2

Q.10 किसी उपाय से स्वभाव नहीं बदलता।  
इस अर्थ के लिए सही लोकोक्ति कौन सी है?

- Ans
- 1. गधा धोने से बैल नहीं हो जाता
  - 2. गधा धोने से बछड़ा नहीं हो जाता
  - 3. गधा धोने से घोड़ा नहीं हो जाता
  - 4. गधा धोने से गाय नहीं हो जाता

Question ID : 630680300169  
Option 1 ID : 6306801167582  
Option 2 ID : 6306801167579  
Option 3 ID : 6306801167580  
Option 4 ID : 6306801167581  
Status : Answered  
Chosen Option : 3

Q.11 विलोम की दृष्टि से कौन सा युग्म सुमेलित नहीं है?

- Ans
- 1. तिमिर – प्रकाश
  - 2. ताप – शीत
  - 3. तीव्र – मंद
  - 4. ज्योति – आलोक

Question ID : 630680300173  
Option 1 ID : 6306801167595  
Option 2 ID : 6306801167597  
Option 3 ID : 6306801167598  
Option 4 ID : 6306801167596  
Status : Answered  
Chosen Option : 2

Q.12 'रुचिर' किसका पर्याय है?

- Ans
- 1. सुगंध
  - 2. सुंदर
  - 3. मलिन
  - 4. रक्त

Question ID : 630680300171

Option 1 ID : 6306801167588

Option 2 ID : 6306801167587

Option 3 ID : 6306801167589

Option 4 ID : 6306801167590

Status : Answered

Chosen Option : 4

Q.13 सरिता के कपाल में दर्द है।

वाक्य के रेखांकित शब्द को उचित समानार्थीविकल्प से प्रतिस्थापित करें।

- Ans
- 1. हाथ
  - 2. पैर
  - 3. सिर
  - 4. पेट

Question ID : 630680300163

Option 1 ID : 6306801167556

Option 2 ID : 6306801167558

Option 3 ID : 6306801167557

Option 4 ID : 6306801167555

Status : Answered

Chosen Option : 2

Q.14 लोगों में एक ..... बन गई है कि राजनीति सज्जनों के लिए नहीं है।  
वाक्य के रिक्त स्थान के लिए सर्वाधिक उपयुक्त शब्द कौन सा है?

- Ans  1. धारणा  
 2. इच्छा  
 3. कहावत  
 4. प्रवृत्ति

Question ID : 630680300164

Option 1 ID : 6306801167559

Option 2 ID : 6306801167561

Option 3 ID : 6306801167562

Option 4 ID : 6306801167560

Status : Answered

Chosen Option : 1

Q.15 युधिष्ठिर द्यूत के व्यसन में सब कुछ हार गये।  
वाक्य के रेखांकित शब्द को सही विकल्प से प्रतिस्थापित करें।

- Ans  1. खेल  
 2. क्रीड़ा  
 3. प्रतिस्पर्द्धा  
 4. जुआ

Question ID : 630680300162

Option 1 ID : 6306801167553

Option 2 ID : 6306801167552

Option 3 ID : 6306801167554

Option 4 ID : 6306801167551

Status : Answered

Chosen Option : 4



Q.16 मित्रों ने सलिल का ..... किया पर उसने बुरा नहीं माना।  
वाक्य के रिक्त स्थान के लिए सर्वाधिक उपयुक्त विकल्प का चयन करें।

- Ans  1. हास  
 2. उपहास  
 3. व्यंग्य  
 4. परिहास

Question ID : 630680300167  
Option 1 ID : 6306801167571  
Option 2 ID : 6306801167572  
Option 3 ID : 6306801167574  
Option 4 ID : 6306801167573  
Status : Answered  
Chosen Option : 1

**Comprehension:**

भक्तिकाल के कवियों ने मन की पवित्रता, आचरण की शुद्धता और जीवन के तमाम प्रसंगों में अपने अनुभव के आधार पर जो नीतिगत उपदेश दिये हैं, वे मध्यकाल में तो महत्वपूर्ण थे ही, वर्तमान दौर की जटिल सामाजिक संरचना, संश्लिष्ट व्यक्तित्व और उपभोक्तावादी मानव के लिए और भी ज्यादा प्रासंगिक हो उठे हैं। आज यह बहुत जरूरी है कि हम भक्ति काव्य के विपुल भण्डार को आज की रोशनी में फिर से पढ़ें। हम भक्त कवियों के अनुभवों से संचित वाणी का पान वर्तमान समय के मनुष्य के समक्ष खड़ी समस्याओं के निदान हेतु कर सकते हैं। भक्त कवियों ने अपने अनुभव संचित ज्ञान से जो उपदेश और शिक्षा हमें दी है, वे समूची मानवता के लिए हमेशा कल्याणकारी बने रहेंगे। मानव-सभ्यता जैसे-जैसे विकास के जटिल सोपानों से गुजरेगी, भक्ति काव्य की प्रासंगिकता वैसे-वैसे बढ़ती जायेगी।  
उपरोक्त गद्यांश के आधार पर निम्नलिखित प्रश्नों के उत्तर दीजिए-

**SubQuestion No : 17**

Q.17 भक्तिकाव्यकी शिक्षा और उपदेशों का आधार है-

- Ans  1. भक्तकवियों का श्रम एवं अभ्यास  
 2. भक्तकवियों का जीवनानुभव  
 3. भक्तकवियों का शास्त्र ज्ञान  
 4. भक्तकवियों की प्रतिभा

Question ID : 630680300154  
Option 1 ID : 6306801167522  
Option 2 ID : 6306801167519  
Option 3 ID : 6306801167520  
Option 4 ID : 6306801167521  
Status : Answered  
Chosen Option : 4

### Comprehension:

भक्तिकाल के कवियों ने मन की पवित्रता, आचरण की शुद्धता और जीवन के तमाम प्रसंगों में अपने अनुभव के आधार पर जो नीतिगत उपदेश दिये हैं, वे मध्यकाल में तो महत्वपूर्ण थे ही, वर्तमान दौर की जटिल सामाजिक संरचना, संश्लिष्ट व्यक्तित्व और उपभोक्तावादी मानव के लिए और भी ज्यादा प्रासंगिक हो उठे हैं। आज यह बहुत जरूरी है कि हम भक्ति काव्य के विपुल भण्डार को आज की रोशनी में फिर से पढ़ें। हम भक्त कवियों के अनुभवों से संचित वाणी का पान वर्तमान समय के मनुष्य के समक्ष खड़ी समस्याओं के निदान हेतु कर सकते हैं। भक्त कवियों ने अपने अनुभव संचित ज्ञान से जो उपदेश और शिक्षा हमें दी है, वे समूची मानवता के लिए हमेशा कल्याणकारी बने रहेंगे। मानव-सभ्यता जैसे-जैसे विकास के जटिल सोपानों से गुजरेगी, भक्ति काव्य की प्रासंगिकता वैसे-वैसे बढ़ती जायेगी।  
उपरोक्त गद्यांश के आधार पर निम्नलिखित प्रश्नों के उत्तर दीजिए-

### SubQuestion No : 18

Q.18 गद्यांश का सर्वाधिक उपयुक्त शीर्षक कौन सा है?

- Ans  1. भक्तिकाव्य की प्रासंगिकता  
 2. भक्तिकाव्य की दार्शनिकता  
 3. भक्तिकाव्य की धार्मिकता  
 4. भक्तिकाव्य की जटिलता

Question ID : 630680300157

Option 1 ID : 6306801167532

Option 2 ID : 6306801167531

Option 3 ID : 6306801167533

Option 4 ID : 6306801167534

Status : Answered

Chosen Option : 2

**Comprehension:**

भक्तिकाल के कवियों ने मन की पवित्रता, आचरण की शुद्धता और जीवन के तमाम प्रसंगों में अपने अनुभव के आधार पर जो नीतिगत उपदेश दिये हैं, वे मध्यकाल में तो महत्वपूर्ण थे ही, वर्तमान दौर की जटिल सामाजिक संरचना, संश्लिष्ट व्यक्तित्व और उपभोक्तावादी मानव के लिए और भी ज्यादा प्रासंगिक हो उठे हैं। आज यह बहुत जरूरी है कि हम भक्ति काव्य के विपुल भण्डार को आज की रोशनी में फिर से पढ़ें। हम भक्त कवियों के अनुभवों से संचित वाणी का पान वर्तमान समय के मनुष्य के समक्ष खड़ी समस्याओं के निदान हेतु कर सकते हैं। भक्त कवियों ने अपने अनुभव संचित ज्ञान से जो उपदेश और शिक्षा हमें दी है, वे समूची मानवता के लिए हमेशा कल्याणकारी बने रहेंगे। मानव-सभ्यता जैसे-जैसे विकास के जटिल सोपानों से गुजरेगी, भक्ति काव्य की प्रासंगिकता वैसे-वैसे बढ़ती जायेगी।  
उपरोक्त गद्यांश के आधार पर निम्नलिखित प्रश्नों के उत्तर दीजिए-

**SubQuestion No : 19**

**Q.19** गद्यांश के अनुसार 'निदान' का अर्थ है-

- Ans**
- 1. अन्वेषण
  - 2. आरंभ
  - 3. अंत
  - 4. विश्लेषण

Question ID : 630680300155

Option 1 ID : 6306801167524

Option 2 ID : 6306801167525

Option 3 ID : 6306801167526

Option 4 ID : 6306801167523

Status : Answered

Chosen Option : 2

**Comprehension:**

भक्तिकाल के कवियों ने मन की पवित्रता, आचरण की शुद्धता और जीवन के तमाम प्रसंगों में अपने अनुभव के आधार पर जो नीतिगत उपदेश दिये हैं, वे मध्यकाल में तो महत्वपूर्ण थे ही, वर्तमान दौर की जटिल सामाजिक संरचना, संश्लिष्ट व्यक्तित्व और उपभोक्तावादी मानव के लिए और भी ज्यादा प्रासंगिक हो उठे हैं। आज यह बहुत जरूरी है कि हम भक्ति काव्य के विपुल भण्डार को आज की रोशनी में फिर से पढ़ें। हम भक्त कवियों के अनुभवों से संचित वाणी का पान वर्तमान समय के मनुष्य के समक्ष खड़ी समस्याओं के निदान हेतु कर सकते हैं। भक्त कवियों ने अपने अनुभव संचित ज्ञान से जो उपदेश और शिक्षा हमें दी है, वे समूची मानवता के लिए हमेशा कल्याणकारी बने रहेंगे। मानव-सभ्यता जैसे-जैसे विकास के जटिल सोपानों से गुजरेगी, भक्ति काव्य की प्रासंगिकता वैसे-वैसे बढ़ती जायेगी।  
उपरोक्त गद्यांश के आधार पर निम्नलिखित प्रश्नों के उत्तर दीजिए-

**SubQuestion No : 20**

**Q.20** गद्यांश के अनुसार भक्ति कविता में किसका महत्व नहीं है?

- Ans** ✓ 1. पुस्तकीय ज्ञान  
✗ 2. आचरण की शुद्धता  
✗ 3. जीवनानुभव  
✗ 4. मन की पवित्रता

Question ID : 630680300156

Option 1 ID : 6306801167529

Option 2 ID : 6306801167528

Option 3 ID : 6306801167530

Option 4 ID : 6306801167527

Status : Answered

Chosen Option : 1

Section : English (Language & Comprehension)

**Q.1 Select the sentence in which the word 'dromomania' is used appropriately.**

- Ans** ✓ 1. Dromomania is an urge to travel aimlessly.
- ✗ 2. She is often found in a state of dromomania.
- ✗ 3. Are the young people aspiring for dromomania?
- ✗ 4. Where is your dromomania?

Question ID : 630680310932

Option 1 ID : 6306801209845

Option 2 ID : 6306801209848

Option 3 ID : 6306801209846

Option 4 ID : 6306801209847

Status : **Answered**

Chosen Option : 3

**Q.2 Select the sentence in which the word 'prodigy' is used appropriately.**

- Ans** ✗ 1. With sufficient hard work one can become a prodigy.
- ✗ 2. Your prodigy is better than your friend.
- ✗ 3. Prodigy is anyone who is amazingly intelligent.
- ✓ 4. Saina Nehwal is a badminton prodigy.

Question ID : 630680310931

Option 1 ID : 6306801209841

Option 2 ID : 6306801209844

Option 3 ID : 6306801209843

Option 4 ID : 6306801209842

Status : **Answered**

Chosen Option : 4

**Q.3** In the following passage, some words have been deleted. Read the passage carefully and select the most appropriate option to fill in each blank.

Once an experiment was conducted on pre school children by a \_\_\_\_\_. They were given a marshmallow and were told to eat it as and when they wanted. However, there was a condition, if they could resist eating it before the researcher came back in half an hour they would be \_\_\_\_\_ with one extra marsh mallow. Saying so, he left the room and observed their behaviour from a secured place. 80% of children acted \_\_\_\_\_ and gobbled up their marshmallows quickly. The remaining 20% \_\_\_\_\_ the temptation, engaged themselves in singing, talking, dancing, etc., to divert their mind and resist the temptation. Years later, the researcher contacted this 20% of people to see how they fared in their life. To his surprise he found them successful in life, they were good leaders in their organisations, responsible family members, dependable friends and worthy member of their community. This proves that successful leaders are different from the 'instant gratification' group. These people were able to manage their stress, handle their emotions, were confident and \_\_\_\_\_ better self control and self discipline. Thus, one must abstain from instant gratifications.

- Ans** ✓ 1. psychologist, rewarded, spontaneously, resisted, exhibited
- ✗ 2. psychologist, warded, spontaneously, resisted, showed
- ✗ 3. psychologist, warded, spontaneously, resisted, exhibited
- ✗ 4. sociologist , rewarded, spontaneously, resisted, exhibited

Question ID : 630680310936

Option 1 ID : 6306801209861

Option 2 ID : 6306801209864

Option 3 ID : 6306801209863

Option 4 ID : 6306801209862

Status : **Answered**

Chosen Option : 2

**Q.4** Select the most appropriate synonym of the given word.  
**Probity**

- Ans**  1. Evil  
 2. Integrity  
 3. Corruption  
 4. Partiality

Question ID : 630680310944

Option 1 ID : 6306801209896

Option 2 ID : 6306801209893

Option 3 ID : 6306801209895

Option 4 ID : 6306801209894

Status : Answered

Chosen Option : 4

**Q.5** Select the most appropriate option to fill in the blank.  
Cooperative learning is based on the spirit of togetherness as many hands make  
\_\_\_\_\_ work.

- Ans**  1. smart  
 2. skilled  
 3. light  
 4. beautiful

Question ID : 630680310939

Option 1 ID : 6306801209874

Option 2 ID : 6306801209876

Option 3 ID : 6306801209873

Option 4 ID : 6306801209875

Status : Answered

Chosen Option : 2

**Q.6** Select the most appropriate option to fill in the blank.  
VUCA stands for \_\_\_\_\_ conditions experienced in turbulent times such as the pandemic in recent years and urges people to be prepared to handle it.

- Ans**
- 1. volatile, uncertain, complex, ambiguous
  - 2. vulgar, uncertain, complex, ambiguous
  - 3. volatile, unassuming, complex, ambiguous
  - 4. volatile, uncertain, competitive, ambiguous

Question ID : 630680310933

Option 1 ID : 6306801209852

Option 2 ID : 6306801209849

Option 3 ID : 6306801209850

Option 4 ID : 6306801209851

Status : Answered

Chosen Option : 4

**Q.7** Crowdfunding depends on several factors such as, excellent social network, contacts and quality of products.  
Here 'crowdfunding' refers to:

- Ans**
- 1. funding from general public through public organisations
  - 2. funding from general public through online websites
  - 3. funding from general public through public shows
  - 4. funding from general public through stage performances

Question ID : 630680310945

Option 1 ID : 6306801209899

Option 2 ID : 6306801209897

Option 3 ID : 6306801209900

Option 4 ID : 6306801209898

Status : Answered

Chosen Option : 1



**Q.8** She is *all of a doodah* for her sister's wedding anniversary.  
Here, the idiom *all of a doodah* means:

- Ans**  1. excited  
 2. happy  
 3. confused  
 4. burdened

Question ID : 630680310940  
Option 1 ID : 6306801209879  
Option 2 ID : 6306801209878  
Option 3 ID : 6306801209877  
Option 4 ID : 6306801209880  
Status : Answered  
Chosen Option : 1

**Q.9** Sentences of a paragraph are given below in jumbled order. Arrange the sentences in the correct order to form a meaningful and coherent paragraph.

1. The well being of our planet, people, and ecosystems seems to be inversely proportional to 'development' in the contemporary world.
2. Unless we rise up to mend our developmental practices now, we will not be able to secure our future.
3. In order to secure the future of our earth, people, habitat, geo political landscape, cultural identity, ethnicity sound and sustainable strategies are required.
4. The most essential one is to establish 'Harmony' of individuals with self, with nature, with their relations, with their peers, with their cultural traditions and so on.

- Ans**  1. 1234  
 2. 1342  
 3. 4123  
 4. 4321

Question ID : 630680310934  
Option 1 ID : 6306801209853  
Option 2 ID : 6306801209854  
Option 3 ID : 6306801209856  
Option 4 ID : 6306801209855  
Status : Answered  
Chosen Option : 4

**Q.10** Is an untrammelled media appropriate for a democratic country such as India?  
Which of the following is an appropriate ANTONYM for 'untrammelled'?

- Ans
- 1. Rampant
  - 2. Reserved
  - 3. Unbridled
  - 4. Free

Question ID : 630680310941

Option 1 ID : 6306801209883

Option 2 ID : 6306801209884

Option 3 ID : 6306801209881

Option 4 ID : 6306801209882

Status : Answered

Chosen Option : 4

**Q.11** Which of the following words means 'large in amount or number'?

- Ans
- 1. Limited
  - 2. Frugal
  - 3. Modest
  - 4. Lavish

Question ID : 630680310930

Option 1 ID : 6306801209840

Option 2 ID : 6306801209839

Option 3 ID : 6306801209838

Option 4 ID : 6306801209837

Status : Answered

Chosen Option : 1

**Q.12** Development is a phenomenon which must be undertaken with caution and a sense of responsibility so that we are able to sustain and enjoy all available resources to meet our needs, at the same time leaving sufficient opportunities for future generations to use these resources for fulfilling their needs.

Which of the following is an appropriate ANTONYM for 'development'?

- Ans
- 1. Expansion
  - 2. Maturity
  - 3. Blooming
  - 4. Waning

Question ID : 630680310943

Option 1 ID : 6306801209890

Option 2 ID : 6306801209889

Option 3 ID : 6306801209892

Option 4 ID : 6306801209891

Status : Answered

Chosen Option : 1

**Q.13** In the following passage, some words have been deleted. Read the passage carefully and select the most appropriate option to fill in each blank.

Knowledge management is the need \_\_\_\_ hour for successful organisations. If \_\_\_\_ organisational leadership sincerely wishes to \_\_\_\_ that the processes run smoothly \_\_\_\_ efficiently with high productivity rate, \_\_\_\_ need to boost employee satisfaction and employee capacity building in house. If the knowledge available with a group of people is not channelised appropriately, it will lie unused or will create blockage.

- Ans
- 1. in, the, ensure, and, they
  - 2. of, the, ensure, and, they
  - 3. of, the, ensure, yet, they
  - 4. of, an, ensure, and, they

Question ID : 630680310938

Option 1 ID : 6306801209869

Option 2 ID : 6306801209870

Option 3 ID : 6306801209872

Option 4 ID : 6306801209871

Status : Answered

Chosen Option : 4

Q.14 In the following passage, some words have been deleted. Read the passage carefully and select the most appropriate option to fill in each blank.

Once there was a bird, which found the \_\_\_\_\_ too cold and so decided to move to a \_\_\_\_\_ place. However, in between the cold wind froze \_\_\_\_\_ so badly that it fell on the ground with a big thud. Suddenly the bird found itself warm, and very soon it realised that it was cow dung. The idea of being \_\_\_\_\_ right in the middle of cow dung made it feel unhappy. But it had no \_\_\_\_\_. Very soon it started getting cosier and started singing in joy. A cat that was \_\_\_\_\_ was curious to hear a musical sound coming from cow dung. Curious as it was, immediately it dug out the bird from the cow dung. The new found freedom made the bird cheerful and it thanked the cat for helping. Immediately, the cat pounced on it and ate the bird. The moral of the story – not every difficult situation is bad, holding on in troubled times is a test one must pass, not every one who helps you is your well wisher. So, act wisely.

- Ans
- 1. weather, new, her, placed, choice, passing out
  - 2. weather, better, her, situated, choice, passing by
  - 3. climate, new, it, situated, choice, passing by
  - 4. weather, new, it, situated, choice, passing by

Question ID : 630680310935

Option 1 ID : 6306801209859

Option 2 ID : 6306801209858

Option 3 ID : 6306801209857

Option 4 ID : 6306801209860

Status : Answered

Chosen Option : 4

**Q.15** In the following passage, some words have been deleted. Read the passage carefully and select the most appropriate option to fill in each blank.

Once there was a seeker, a man thirsty\_\_\_ knowledge, who wanted to know everything that was \_\_\_\_\_ and that was non-existential. He set out on a \_\_\_\_\_ and searched for answers of his own heart, \_\_\_\_\_, perception, and destiny. But he was still unsatisfied. \_\_\_\_\_day he saw a child bringing water from the ocean \_\_\_ his hands and putting it in a pot which was broken. The sage was amazed to see the foolishness of the child and told him so. The boy replied that you are also doing the same, but would you call yourself a fool?

Ans  1. for, existent, journey, mind, One, inside

2. for, existent, journey, mind, One, in

3. of, existent, journey, mind, One, in

4. for, existent, travel, mind, One, in

Question ID : 630680310937

Option 1 ID : 6306801209868

Option 2 ID : 6306801209867

Option 3 ID : 6306801209865

Option 4 ID : 6306801209866

Status : Answered

Chosen Option : 3

**Q.16** Despite all blandishments of her peers she did not accept their offer. Which of the following is an appropriate ANTONYM for 'blandishment'?

Ans  1. Admonishing statement

2. Appreciating statement

3. Persuading statement

4. Flattering statement

Question ID : 630680310942

Option 1 ID : 6306801209886

Option 2 ID : 6306801209887

Option 3 ID : 6306801209888

Option 4 ID : 6306801209885

Status : Answered

Chosen Option : 2

**Comprehension:**

Read the given passage and select the central theme from the given options.

According to the Justice JS Verma Commission (2012) constituted by the Supreme Court, a majority of stand-alone TEIs – over 10,000 in number are not even attempting serious teacher education but are essentially selling degrees for a price. Regulatory efforts so far have neither been able to curb the malpractices in the system, nor enforce basic standards for quality, and in fact have had the negative effect of curbing the growth of excellence and innovation in the sector. The sector and its regulatory system are, therefore, in urgent need of revitalisation through radical action, in order to raise standards and restore integrity, credibility, efficacy, and high quality to the teacher education system.  
( National Education Policy, 2020)

**SubQuestion No : 17**

**Q.17** what inference would you draw from the above passage ?

- Ans**  1. Teacher Education Institutes need radical change
2. Quality of education in TEI improved due to regulations.
3. Stand alone TEI offer good quality of teacher training
4. Teacher education and its regulatory mechanism needs revamping urgently

Question ID : **630680310927**

Option 1 ID : **6306801209825**

Option 2 ID : **6306801209828**

Option 3 ID : **6306801209827**

Option 4 ID : **6306801209826**

Status : **Answered**

Chosen Option : **2**

**Comprehension:**

Read the given passage and select the central theme from the given options.

According to the Justice JS Verma Commission (2012) constituted by the Supreme Court, a majority of stand-alone TEIs – over 10,000 in number are not even attempting serious teacher education but are essentially selling degrees for a price. Regulatory efforts so far have neither been able to curb the malpractices in the system, nor enforce basic standards for quality, and in fact have had the negative effect of curbing the growth of excellence and innovation in the sector. The sector and its regulatory system are, therefore, in urgent need of revitalisation through radical action, in order to raise standards and restore integrity, credibility, efficacy, and high quality to the teacher education system.  
( National Education Policy, 2020)

**SubQuestion No : 18**

**Q.18** Read the given passage and identify the option that gives the best one sentence summary of the above passage.

- Ans**    ✓ 1. The regulatory mechanism of TEI need improvement to maintain Quality standards
- ✗ 2. TEI needs no drastic change
- ✗ 3. TEI in India is in good shape
- ✗ 4. TEI are selling degree at a price

Question ID : 630680310928

Option 1 ID : 6306801209831

Option 2 ID : 6306801209830

Option 3 ID : 6306801209829

Option 4 ID : 6306801209832

Status : Answered

Chosen Option : 3

**Comprehension:**

Read the given passage and select the central theme from the given options.

According to the Justice JS Verma Commission (2012) constituted by the Supreme Court, a majority of stand-alone TEIs – over 10,000 in number are not even attempting serious teacher education but are essentially selling degrees for a price. Regulatory efforts so far have neither been able to curb the malpractices in the system, nor enforce basic standards for quality, and in fact have had the negative effect of curbing the growth of excellence and innovation in the sector. The sector and its regulatory system are, therefore, in urgent need of revitalisation through radical action, in order to raise standards and restore integrity, credibility, efficacy, and high quality to the teacher education system.  
( National Education Policy, 2020)

**SubQuestion No : 19**

**Q.19** Read the given passage and select the central theme from the given options.

- Ans** ✓ 1. Teacher education needs revamping urgently.
- ✗ 2. Teacher training needs to be innovative.
- ✗ 3. Teacher education institutions are selling degrees.
- ✗ 4. Teacher education is not of quality standard.

Question ID : 630680310926

Option 1 ID : 6306801209821

Option 2 ID : 6306801209822

Option 3 ID : 6306801209824

Option 4 ID : 6306801209823

Status : Answered

Chosen Option : 2



**Comprehension:**

Read the given passage and select the central theme from the given options.

According to the Justice JS Verma Commission (2012) constituted by the Supreme Court, a majority of stand-alone TEIs – over 10,000 in number are not even attempting serious teacher education but are essentially selling degrees for a price. Regulatory efforts so far have neither been able to curb the malpractices in the system, nor enforce basic standards for quality, and in fact have had the negative effect of curbing the growth of excellence and innovation in the sector. The sector and its regulatory system are, therefore, in urgent need of revitalisation through radical action, in order to raise standards and restore integrity, credibility, efficacy, and high quality to the teacher education system.  
( National Education Policy, 2020)

**SubQuestion No : 20**

**Q.20** Read the given passage and identify the tone from following options.

- Ans**
- 1. Inspirational
  - 2. Indiscriminatory
  - 3. Instructional
  - 4. Critical

Question ID : **630680310929**

Option 1 ID : **6306801209833**

Option 2 ID : **6306801209835**

Option 3 ID : **6306801209834**

Option 4 ID : **6306801209836**

Status : **Answered**

Chosen Option : **3**

Section : **Basic Computer Knowledge**

**Q.1** Which of the following file extensions is for Microsoft Word template before Word 2007?

- Ans**
- 1. docm
  - 2. dot
  - 3. doc
  - 4. docx

Question ID : 630680300240

Option 1 ID : 6306801167865

Option 2 ID : 6306801167866

Option 3 ID : 6306801167863

Option 4 ID : 6306801167864

Status : Answered

Chosen Option : 4

**Q.2** Which of the following menu groups under 'Home' menu contains 'Clear All Formatting' icon in Ms-Word365?

- i-Font
- ii-Paragraph
- iii-Styles
- iv-Clipboard

- Ans**
- 1. i, ii and iii
  - 2. i, ii and iv
  - 3. Only ii
  - 4. ii, iii and iv

Question ID : 630680300243

Option 1 ID : 6306801167876

Option 2 ID : 6306801167877

Option 3 ID : 6306801167875

Option 4 ID : 6306801167878

Status : Answered

Chosen Option : 1

**Q.3** Which of the given options best describes the truthfulness of the following statements?

i) In WindowsXP, the default location of the start button is system tray.

ii) In WindowsXP, shortcut icons allow you to open applications quickly. Desktop shortcuts are links to files and programs.

- Ans
- 1. i-True, ii-True
  - 2. i-False, ii-False
  - 3. i-True, ii-False
  - 4. i-False, ii-True

Question ID : 630680300238

Option 1 ID : 6306801167855

Option 2 ID : 6306801167858

Option 3 ID : 6306801167857

Option 4 ID : 6306801167856

Status : Answered

Chosen Option : 1

KD JOB UPDATES

Q.4 Match the column MS-Word365 print settings with the column Descriptions.

MS-Word365 print settings	Descriptions
(a) Print All Pages	(i) Type specific pages, sections or ranges
(b) Print Selection	(ii) The whole thing
(c) Custom Print	(iii) Just what you selected

- Ans
- 1. (a)-(i), (b)-(iii), (c)-(ii)
  - 2. (a)-(iii), (b)-(i), (c)-(ii)
  - 3. (a)-(ii), (b)-(iii), (c)-(i)
  - 4. (a)-(i), (b)-(ii), (c)-(iii)

Question ID : 630680300242

Option 1 ID : 6306801167873

Option 2 ID : 6306801167874



Option 3 ID : 6306801167871

Option 4 ID : 6306801167872

Status : Answered

Chosen Option : 3

**Q.5** Identify whether the following statements are true or false.

- i) In Ms-Excel365, worksheet names cannot contain more than thirty-one characters.
- ii) In MS-Excell365, the icon  under alignment menu group refers to 'Angle Counterclockwise'.
- iii) In MS-Excell365, the symbol  under Alignment menu group is used to increase indent.

- Ans**
- 1. i-False, ii-True, iii-True
  - 2. i-True, ii-True, iii-False
  - 3. i-True, ii-True, iii-True
  - 4. i-True, ii-False, iii-True

Question ID : 630680300244  
Option 1 ID : 6306801167880  
Option 2 ID : 6306801167881  
Option 3 ID : 6306801167879  
Option 4 ID : 6306801167882  
Status : Answered  
Chosen Option : 2

**Q.6** Which of the following options are available in the combo box of option 'Editing restrictions' under 'Restrict Editing' menu group in Review menu in Microsoft Word 365?Options:  
i-Filling in forms  
ii-Comments  
iii-Tracked changes  
iv-No changes  
v-Check Accessibility

- Ans**
- 1. i, iii and v
  - 2. i, ii, iii and iv
  - 3. iii, iv and v
  - 4. Only i, ii and iv

Question ID : 630680300241  
Option 1 ID : 6306801167868  
Option 2 ID : 6306801167867  
Option 3 ID : 6306801167869  
Option 4 ID : 6306801167870  
Status : Answered  
Chosen Option : 4

**Q.7** Which of the following free services are available on portal for land records services, government of Maharashtra?

i-e-Hakk

ii-Aaplichawdi

iii-Bhulekh

iv-Mutation application status

**Ans**  1. Only ii, iii and iv

2. Only i

3. Only i, ii and iii

4. i, ii, iii and iv

Question ID : 630680300252

Option 1 ID : 6306801167914

Option 2 ID : 6306801167911

Option 3 ID : 6306801167912

Option 4 ID : 6306801167913

Status : Answered

Chosen Option : 2

KD JOB UPDATES

Q.8 Match the column Computer Units with the column Activity.

Computer Units	Activity
(a) Input Unit	(i) Interprets instructions
(b) Output Unit	(ii) Read data to be processed
(c) Memory Unit	(iii) Prints or displays computed result
(d) Processing Unit	(iv) Stores algorithm and computed value

- Ans
- 1. (a)-(iii), (b)-(i), (c)-(iv), (d)-(ii)
  - 2. (a)-(i), (b)-(ii), (c)-(iv), (d)-(iii)
  - 3. (a)-(ii), (b)-(i), (c)-(iii), (d)-(iv)
  - 4. (a)-(ii), (b)-(iii), (c)-(iv), (d)-(i)

Question ID : 630680300236

Option 1 ID : 6306801167850

Option 2 ID : 6306801167848

Option 3 ID : 6306801167849

Option 4 ID : 6306801167847

Status : Answered

Chosen Option : 4

**Q.9** Identify whether the following statements are true or false.

i) Digital signature is a cryptographic value that is calculated from the data and a secret key known only by the signer.

ii) In symmetric encryption, data is encrypted using a key, and the decryption is also done using the same key.

iii) A digital signature is authenticated using an SMS.

Ans  1. i-True, ii-True, iii-True

2. i-True, ii-True, iii-False

3. i False, ii-True, iii-True

4. i-True, ii-False, iii-True

Question ID : 630680300250

Option 1 ID : 6306801167903

Option 2 ID : 6306801167906

Option 3 ID : 6306801167904

Option 4 ID : 6306801167905

Status : Answered

Chosen Option : 1

**Q.10** Which of the following programs is a self-sustainable e-Governance project for the computerised delivery of twenty million rural land records to 6.7 million farmers of Karnataka?

Ans  1. MCA21

2. Bhoomi Project

3. e-Office

4. e-Seva

Question ID : 630680300251

Option 1 ID : 6306801167910

Option 2 ID : 6306801167907

Option 3 ID : 6306801167909

Option 4 ID : 6306801167908

Status : Answered

Chosen Option : 2



Q.11 Which of the following are the characteristics of computer?

- i-No Feeling
- ii-Intelligence Quotient (IQ)
- iii-Accuracy
- iv-Tiredness
- v-Versatility

Ans  1. i, ii and iii

2. i, ii, iii and v

3. ii and iv

4. i, ii and v

Question ID : 630680300235

Option 1 ID : 6306801167844

Option 2 ID : 6306801167843

Option 3 ID : 6306801167846

Option 4 ID : 6306801167845

Status : Answered

Chosen Option : 2

Q.12 What is the expected result of the MS-Excel formula

(i) =LARGE(A1:A4,2) if the values in cells A1, A2, A3 and A4 are 9, 10, 5 and 1, respectively, and the given formula is entered in cell A16.

(ii) =A15^A16 if the values in cells A15 and A16 are 2 and 4, respectively, and the given formula is entered in cell A17.

Ans  1. (i) 10, (ii) 8

2. (i) 5, (ii) 16

3. (i) 1, (ii) 6

4. (i) 9, (ii) 16

Question ID : 630680300246

Option 1 ID : 6306801167888

Option 2 ID : 6306801167890

Option 3 ID : 6306801167889

Option 4 ID : 6306801167887

Status : Answered

Chosen Option : 3

Q.13 Which of the following file formats is used to save PowerPoint365 Add-in?

- Ans
- 1. .pot
  - 2. .pps
  - 3. .ppa
  - 4. .ppam

Question ID : 630680300247

Option 1 ID : 6306801167894

Option 2 ID : 6306801167891

Option 3 ID : 6306801167892

Option 4 ID : 6306801167893

Status : Answered

Chosen Option : 2

Q.14 In MS-Excel365, \_\_\_\_\_ is available under Styles menu group in Home?

- Ans
- 1. Format as Table
  - 2. Sort & Filter
  - 3. Paste
  - 4. Find & Select

Question ID : 630680300245

Option 1 ID : 6306801167883

Option 2 ID : 6306801167886

Option 3 ID : 6306801167885

Option 4 ID : 6306801167884

Status : Answered

Chosen Option : 4

**Q.15** Arrange the following steps in the correct order to manually set the object to a specific height and width in MS-PowerPoint365?

i-Right-click the object.

ii-In the dialog box, click the Size tab.

iii-On the shortcut menu, click Format.

iv-Under Size and rotate, enter measurements for the height and width of the object.

Ans  1. i, iii, ii, iv

2. i, ii, iii, iv

3. iii, i, ii, iv

4. i, iv, iii, ii

Question ID : 630680300248

Option 1 ID : 6306801167895

Option 2 ID : 6306801167896

Option 3 ID : 6306801167898

Option 4 ID : 6306801167897

Status : Answered

Chosen Option : 2

**Q.16** Integrated Circuit (IC) is also referred to as \_\_\_\_\_.

Ans  1. Nano-chip

2. Mono-chip

3. Basic Circuit

4. Microchip

Question ID : 630680300234

Option 1 ID : 6306801167840

Option 2 ID : 6306801167841

Option 3 ID : 6306801167842

Option 4 ID : 6306801167839

Status : Answered

Chosen Option : 4

Q.17 Which of the following are displayed when the 'My computer' icon is clicked in Windows XP?

i-Files stored on the computer

ii- Hard Disk Drives (usually just your C drive)

iii-Devices with Removable Storage (floppy disk drive, CD drive, zip drive, usb key)

iv-Network Drives

Ans  1. Only i, ii and iv

2. i, ii, iii and iv

3. Only i and ii

4. Only iii and iv

Question ID : 630680300237

Option 1 ID : 6306801167853

Option 2 ID : 6306801167852

Option 3 ID : 6306801167851

Option 4 ID : 6306801167854

Status : Answered

Chosen Option : 4

Q.18 Identify whether the following statements are true or false.

i) Online allotment of appointments of Passport Seva Kendra (PSK) and Post Office Passport Seva Kendra (POPSK) are based on an Electronic Queue Management System.

ii) Passport Seva Kendra location can be located using two options 'Passport Office' wise and 'PIN Code' wise on <https://passportindia.gov.in>.

Ans  1. i-True, ii-True

2. i-False, ii-False

3. i-True, ii-False

4. i-False, ii-True

Question ID : 630680300253

Option 1 ID : 6306801167915

Option 2 ID : 6306801167918

Option 3 ID : 6306801167917

Option 4 ID : 6306801167916

Status : Answered

Chosen Option : 1

**Q.19** Identify whether the following statements are true or false.

i) In MS-PowerPoint365, theme is a design scheme of colours, fonts and background that you apply to your slides.

ii) In MS-PowerPoint365, template is a theme plus some content for a specific purpose, such as a sales presentation, a business plan or a classroom lesson.

iii) In MS-PowerPoint365, the 'Format Background' in Design menu is used for fine-tuning the formatting of slides background or hide design element from the current design.

**Ans** ✓ 1. i-True, ii-True, iii-True

✗ 2. i-False, ii-False, iii-True

✗ 3. i-False, ii-True, iii-True

✗ 4. i-True, ii-False, iii-True

Question ID : 630680310896

Option 1 ID : 6306801209709

Option 2 ID : 6306801209712

Option 3 ID : 6306801209710

Option 4 ID : 6306801209711

Status : **Answered**

Chosen Option : 3

**Q.20** Arrange the following steps in the correct sequence to install a new software in Windows 10.

i-Use keyboard shortcut Windows Key + R; then in run dialog box, type control and then press enter key.

ii-Click on Add New Programs, and then select the source where the software to be installed is located such as CD or Floppy drive.

iii-Double-click on Add or Remove Programs.

iv-Follow the instructions on your screen to install that specific software.

**Ans** ✗ 1. i, ii, iii, iv

✗ 2. i, iii, iv, ii

✓ 3. i, iii, ii, iv

✗ 4. iv, ii, iii, i

Question ID : 630680300239

Option 1 ID : 6306801167860

Option 2 ID : 6306801167862

Option 3 ID : 6306801167859

Option 4 ID : 6306801167861

Status : **Answered**

Chosen Option : 4