

**DELHI DEVELOPMENT AUTHORITY**  
**RECRUITMENT CELL**  
**VIKAS SADAN, INA, NEW DELHI - 110023**  
(<https://www.dda.gov.in>)

Advertisement No. 02/2023/Recrtt. Cell/Pers./DDA

Participant ID	
Participant Name	
Test Center Name	
Test Date	19/08/2023
Test Time	12:30 PM - 2:30 PM
Subject	Patwari

Section : General Awareness

Q.1 Which of the following statements is correct regarding Rongker festival?

I. This festival is celebrated every year in the month of October.

II. This festival is celebrated exclusively by the male members of the Karbi tribe.

Ans ✓ 1. Only II

✗ 2. Only I

✗ 3. Neither I nor II

✗ 4. Both I and II

Question ID : 630680315387

Option 1 ID : 6306801227266

Option 2 ID : 6306801227265

Option 3 ID : 6306801227268

Option 4 ID : 6306801227267

Status : Not Answered

Chosen Option : --

**Q.2** Which of the following statements is correct regarding Pradhan Mantri Suraksha Bima Yojana?

I. This scheme is available to people in the age group 18 to 70 years.

II. The risk coverage under the scheme is Rs. 2 lakh for accidental death and full disability.

Ans  1. Neither I nor II

2. Both I and II

3. Only I

4. Only II

Question ID : 630680315379

Option 1 ID : 6306801227236

Option 2 ID : 6306801227235

Option 3 ID : 6306801227233

Option 4 ID : 6306801227234

Status : Answered

Chosen Option : 4

**Q.3** India's first online taxi service owned by a State government was rolled out in which state?

Ans  1. Gujarat

2. Karnataka

3. Rajasthan

4. Kerala

Question ID : 630680315378

Option 1 ID : 6306801227230

Option 2 ID : 6306801227232

Option 3 ID : 6306801227231

Option 4 ID : 6306801227229

Status : Answered

Chosen Option : 1

**Q.4 Who administers the oath for the office of the Vice-President of India?**

**Ans** ✗ 1. Speaker of House of the People

✗ 2. Prime minister of India

✓ 3. President of India

✗ 4. Chief Justice of India

Question ID : 630680315392

Option 1 ID : 6306801227286

Option 2 ID : 6306801227285

Option 3 ID : 6306801227288

Option 4 ID : 6306801227287

Status : Answered

Chosen Option : 4

**Q.5 Which of the following statements are correct regarding the functions of the Reserve Bank of India?**

**I. It issues the currency notes of the country.**

**II. It controls money supply of the country.**

**Ans** ✓ 1. Both I and II

✗ 2. Only I

✗ 3. Neither I nor II

✗ 4. Only II

Question ID : 630680315381

Option 1 ID : 6306801227243

Option 2 ID : 6306801227241

Option 3 ID : 6306801227244

Option 4 ID : 6306801227242

Status : Answered

Chosen Option : 1

**Q.6** Tele Mental Health Assistance and Networking Across States (Tele-MANAS) initiative of Union Ministry of Health & Family Welfare was launched in \_\_\_\_\_.

- Ans**
- 1. April 2022
  - 2. October 2021
  - 3. October 2022
  - 4. April 2021

Question ID : 630680315377  
Option 1 ID : 6306801227227  
Option 2 ID : 6306801227226  
Option 3 ID : 6306801227228  
Option 4 ID : 6306801227225  
Status : Answered  
Chosen Option : 4

**Q.7** Who is the writer of the novel 'Chronicle of a Corpse Bearer'?

- Ans**
- 1. Arundhati Subramaniam
  - 2. Aravind Adiga
  - 3. Cyrus Mistry
  - 4. Namita Gokhale

Question ID : 630680315385  
Option 1 ID : 6306801227258  
Option 2 ID : 6306801227260  
Option 3 ID : 6306801227257  
Option 4 ID : 6306801227259  
Status : Not Attempted and Marked For Review  
Chosen Option : --

**Q.8** According to India State of Forest Report 2021 which among the following state of India has the largest forest cover area wise?

- Ans**  1. Madhya Pradesh  
 2. Himachal Pradesh  
 3. Assam  
 4. Andhra Pradesh

Question ID : 630680315389

Option 1 ID : 6306801227275

Option 2 ID : 6306801227276

Option 3 ID : 6306801227273

Option 4 ID : 6306801227274

Status : Answered

Chosen Option : 1

**Q.9** As per July 2023, which among the following states have more than 30 Lok Sabha constituencies?

- I. Uttar Pradesh  
II. Madhya Pradesh

- Ans**  1. Only I  
 2. Neither I nor II  
 3. Only II  
 4. Both I and II

Question ID : 630680315393

Option 1 ID : 6306801227289

Option 2 ID : 6306801227292

Option 3 ID : 6306801227290

Option 4 ID : 6306801227291

Status : Answered

Chosen Option : 1

Q.10 The first English factory was set up on the banks of the river \_\_\_\_\_ in 1651.

Ans  1. Yamuna

2. Hugli

3. Indus

4. Sabarmati

Question ID : 630680315382

Option 1 ID : 6306801227247

Option 2 ID : 6306801227246

Option 3 ID : 6306801227245

Option 4 ID : 6306801227248

Status : Answered

Chosen Option : 2

Q.11 Which of the following statements is correct regarding the Prarthana Samaj?

I. It was founded in 1864.

II. It was founded in Maharashtra.

Ans  1. Only II

2. Neither I nor II

3. Only I

4. Both I and II

Question ID : 630680315383

Option 1 ID : 6306801227250

Option 2 ID : 6306801227252

Option 3 ID : 6306801227249

Option 4 ID : 6306801227251

Status : Answered

Chosen Option : 4

Q.12 As of June 2022, which of the following languages have been given status of classical languages in India?

I. Kannada

II. Telugu

Ans  1. Only I

2. Both I and II

3. Only II

4. Neither I nor II

Question ID : 630680315386

Option 1 ID : 6306801227261

Option 2 ID : 6306801227263

Option 3 ID : 6306801227262

Option 4 ID : 6306801227264

Status : Answered

Chosen Option : 3

Q.13 The outermost covering of the cell that separates the contents of the cell from its external environment is called \_\_\_\_\_.

Ans  1. plasma membrane

2. Golgi-apparatus

3. Nucleus

4. Cytoplasma

Question ID : 630680315394

Option 1 ID : 6306801227293

Option 2 ID : 6306801227296

Option 3 ID : 6306801227294

Option 4 ID : 6306801227295

Status : Answered

Chosen Option : 1

**Q.14** As per Census 2011, which among the following states has the highest sex ratio (number of females per 1000 males) in India?

- Ans**  1. Manipur  
 2. Jharkhand  
 3. Meghalaya  
 4. Karnataka

Question ID : 630680315390

Option 1 ID : 6306801227278

Option 2 ID : 6306801227280

Option 3 ID : 6306801227279

Option 4 ID : 6306801227277

Status : Answered

Chosen Option : 4

**Q.15** Which of the following is NOT mentioned in 'Part 2' of the Indian Constitution?

- Ans**  1. Citizenship at the commencement of the Constitution  
 2. Continuance of the rights of citizenship  
 3. Rights of citizenship of certain migrants to Pakistan  
 4. Admission or establishment of new States

Question ID : 630680315391

Option 1 ID : 6306801227281

Option 2 ID : 6306801227283

Option 3 ID : 6306801227282

Option 4 ID : 6306801227284

Status : Answered

Chosen Option : 4



Q.16 The island which is unhabitated and has a bird sanctuary in India is \_\_\_\_\_.

- Ans  1. Kavaretti island  
 2. Amindive island  
 3. Pitti island  
 4. Minicoy island

Question ID : 630680315388

Option 1 ID : 6306801227270

Option 2 ID : 6306801227271

Option 3 ID : 6306801227269

Option 4 ID : 6306801227272

Status : Answered

Chosen Option : 1

Q.17 Macroeconomics deals with all the given entities EXCEPT \_\_\_\_\_.

- Ans  1. Aggregate price level  
 2. Different markets  
 3. Total output  
 4. Employment

Question ID : 630680315380

Option 1 ID : 6306801227240

Option 2 ID : 6306801227237

Option 3 ID : 6306801227238

Option 4 ID : 6306801227239

Status : Answered

Chosen Option : 4

Q.18 Who is the first Indian long jumper to win a medal in the Diamond League?

Ans  1. Suresh Babu

2. Murali Sreeshankar

3. Ankit Sharma

4. Anju Bobby George

Question ID : 630680315375

Option 1 ID : 6306801227219

Option 2 ID : 6306801227220

Option 3 ID : 6306801227217

Option 4 ID : 6306801227218

Status : Answered

Chosen Option : 4

Q.19 Who won the 57th Jnanpith Award?

Ans  1. Tapan Bandopadhyay

2. Manoj Kumar Goswami

3. Damodar Mauzo

4. Praveen Dashrath Bandekar

Question ID : 630680315384

Option 1 ID : 6306801227255

Option 2 ID : 6306801227253

Option 3 ID : 6306801227254

Option 4 ID : 6306801227256

Status : Not Attempted and  
Marked For Review

Chosen Option : --

Q.20 The first Janjatiya Khel Mahotsav in India was organised at \_\_\_\_\_.

- Ans
- 1. Imphal
  - 2. Aizawl
  - 3. Bhubaneswar
  - 4. Guwahati

Question ID : 630680315376  
Option 1 ID : 6306801227221  
Option 2 ID : 6306801227222  
Option 3 ID : 6306801227223  
Option 4 ID : 6306801227224  
Status : Answered  
Chosen Option : 4

Section : General Intelligence & Reasoning Ability

Q.1 In the question given below, relationships between different elements are shown in the statements. These statements are followed by two conclusions. Give answer:

Statements:

I.  $B > S > R > Q = F$

Conclusions:

I.  $R \geq F$

II.  $S > F$

- Ans
- 1. If both conclusions I and II are true
  - 2. If only conclusion I is true
  - 3. If only conclusion II is true
  - 4. If neither conclusion I nor conclusion II is true

Question ID : 630680315400  
Option 1 ID : 6306801227320  
Option 2 ID : 6306801227317  
Option 3 ID : 6306801227318  
Option 4 ID : 6306801227319  
Status : Answered  
Chosen Option : 2

**Q.2** In the following question, select the related letter pair from the given alternatives.  
SWL : WAP :: ?

- Ans**  1. QRN : UVR  
 2. TUS : RQS  
 3. NNO : BBA  
 4. YZW : XUV

Question ID : 630680315406

Option 1 ID : 6306801227342

Option 2 ID : 6306801227344

Option 3 ID : 6306801227341

Option 4 ID : 6306801227343

Status : Answered

Chosen Option : 1

**Q.3** In the question given below, relationships between different elements are shown in the statements. These statements are followed by two conclusions. Give answer:

**Statements:**

I.  $M \geq N \geq Q > R \leq O \leq P$

**Conclusions:**

I.  $M > O$

II.  $N \leq P$

- Ans**  1. If only conclusion I is true  
 2. If neither conclusion I nor conclusion II is true  
 3. If only conclusion II is true  
 4. If both conclusions I and II are true

Question ID : 630680315399

Option 1 ID : 6306801227313

Option 2 ID : 6306801227315

Option 3 ID : 6306801227314

Option 4 ID : 6306801227316

Status : Answered

Chosen Option : 1

**Q.4** Seven boys B1, B2, B3, B4, B5, B6 and B7 are sitting in a row facing towards the south (not necessarily in the same order). B1 is fifth to the left of B7. B2 is to the immediate right of B7. Only two boys are sitting between B7 and B4. B3 is not the immediate neighbour of B4. B5 is second to the right of B6. Who is third to the left of B5?

Ans  1. B2

2. B1

3. B4

4. B6

Question ID : 630680315395

Option 1 ID : 6306801227297

Option 2 ID : 6306801227300

Option 3 ID : 6306801227298

Option 4 ID : 6306801227299

Status : **Not Attempted and  
Marked For Review**

Chosen Option : --

**Q.5** In the following question, select the odd letter/letters from the given alternatives.

Ans  1. AZ

2. DX

3. MN

4. EV

Question ID : 630680315407

Option 1 ID : 6306801227345

Option 2 ID : 6306801227346

Option 3 ID : 6306801227347

Option 4 ID : 6306801227348

Status : **Answered**

Chosen Option : 4

Q.6 After interchanging the which two signs, the value of the given equation will be '70'?

$$70 \div 3 \times 7 + 50 - 10$$

Ans  1. + and ×

2. × and −

3. × and ÷

4. + and −

Question ID : 630680315414

Option 1 ID : 6306801227376

Option 2 ID : 6306801227373

Option 3 ID : 6306801227374

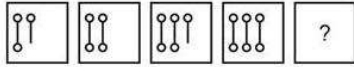
Option 4 ID : 6306801227375

Status : Answered

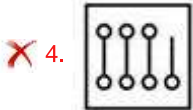
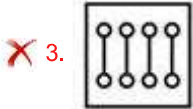
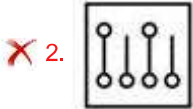
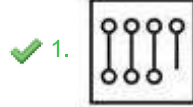
Chosen Option : 3

KD JOB UPDATES

**Q.7** In the following question, select the figure which can be placed at the sign of question mark (?) from the given alternatives.



**Ans**



Question ID : 630680315409

Option 1 ID : 6306801227354

Option 2 ID : 6306801227353

Option 3 ID : 6306801227356

Option 4 ID : 6306801227355

Status : Answered

Chosen Option : 1

**Q.8** In the following question, four letter pairs are given. The letters on left side of (–) is related to the letters on the right side of (–) with some Logic/Rule/Relation. Three are similar on basis of same Logic/Rule/Relation. Select the odd one out from the given alternatives.

- Ans  1. YEIL – WCGJ  
 2. OUYB – MSWZ  
 3. AIMT – YGKQ  
 4. IOSV – GMQT

Question ID : 630680315408

Option 1 ID : 6306801227351

Option 2 ID : 6306801227349

Option 3 ID : 6306801227350

Option 4 ID : 6306801227352

Status : Answered

Chosen Option : 3

**Q.9** If  $10 @ 6 \# 9 = 51$  and  $4 @ 3 \# 5 = 7$ , then  $4 @ 6 * 8 = ?$

- Ans  1. 10  
 2. 18  
 3. 16  
 4. 24

Question ID : 630680315413

Option 1 ID : 6306801227370

Option 2 ID : 6306801227369

Option 3 ID : 6306801227371

Option 4 ID : 6306801227372

Status : Answered

Chosen Option : 3



**Q.10** Five plays P1, P2, P3, P4 and P5 are to be staged from Monday to Friday of a week. On each day, only one play will be staged. P4 and P5 should not be the first or last to be staged. P5 should be staged immediately before P3. P2 should be staged immediately after P4. One play is staged between P1 and P2. How many plays are staged between P1 and P5?

Ans  1. 2

2. 0

3. 3

4. 1

Question ID : 630680315397

Option 1 ID : 6306801227308

Option 2 ID : 6306801227305

Option 3 ID : 6306801227306

Option 4 ID : 6306801227307

Status : Answered

Chosen Option : 3

**Q.11** In the following question below are given some statements followed by some conclusions based on those statements. Taking the given statements to be true even if they seem to be at variance from commonly known facts. Read all the conclusions and then decide which of the given conclusion logically follows the given statements.

**Statements:**

I. Some K are M.

II. All M are J.

**Conclusion:**

I. All J are K.

II. Some K are J.

III. Some M are K.

Ans  1. Only conclusion III follows

2. Only conclusion II follows

3. Both conclusions I and III follows

4. Both conclusions II and III follows

Question ID : 630680315398

Option 1 ID : 6306801227311

Option 2 ID : 6306801227310

Option 3 ID : 6306801227309

Option 4 ID : 6306801227312

Status : Answered

Chosen Option : 4

Q.12 If 'P = Q' means 'Q is the father of P', 'P + Q' means 'P is the sister of Q', 'P ? Q' means 'Q is the mother of P', 'P \$ Q' means 'P is the brother of Q', 'P @ Q' means 'Q is the son of P', 'P × Q' means 'P is the daughter of Q', then which of the following is NOT correct?

- Ans
- 1. 'R × S ? T' means R is the granddaughter of T.
  - 2. 'P = Q ? R' means R is the grandmother of P.
  - 3. 'L \$ M × O' means O is the sister of L.
  - 4. 'M × O @ P = Q' means Q and O are husband and wife.

Question ID : 630680315404

Option 1 ID : 6306801227333

Option 2 ID : 6306801227334

Option 3 ID : 6306801227335

Option 4 ID : 6306801227336

Status : Answered

Chosen Option : 1

Q.13 In the following question, select the missing number from the given series.

1, 0, 4, -5, 11, ?

- Ans
- 1. -21
  - 2. -14
  - 3. -18
  - 4. 0

Question ID : 630680315411

Option 1 ID : 6306801227364

Option 2 ID : 6306801227362

Option 3 ID : 6306801227363

Option 4 ID : 6306801227361

Status : Answered

Chosen Option : 2

Q.14 Eight women P, Q, R, S, T, U, V and W are sitting around a circular table facing towards the centre (not necessarily in the same order). T is fourth to the left of V. U is not the immediate neighbour of V. T is second to the right of U. V is the immediate neighbour of P and R. S is the immediate neighbour of P and W. Which of the following statement(s) is/are correct?  
I. S is to the immediate left of P.  
II. U is to the immediate right of R.

- Ans
- 1. Only I
  - 2. Only II
  - 3. Neither I nor II
  - 4. Both I and II

Question ID : 630680315396  
Option 1 ID : 6306801227301  
Option 2 ID : 6306801227302  
Option 3 ID : 6306801227304  
Option 4 ID : 6306801227303  
Status : Answered  
Chosen Option : 1

Q.15 नीचे दी गई अक्षर-संख्या से बनी स्ट्रिंग पर विचार करें। ऐसे कितने अंक/अक्षर हैं जिनके ठीक पहले 8 और ठीक बाद अक्षर I आता है?  
P I P P 1 1 1 8 P 8 8 8 P I 8 8 P I 1 1 1 8 P 8 P

- Ans
- 1. 4
  - 2. 2
  - 3. 1
  - 4. 0

Question ID : 630680315402  
Option 1 ID : 6306801227328  
Option 2 ID : 6306801227327  
Option 3 ID : 6306801227326  
Option 4 ID : 6306801227325  
Status : Answered  
Chosen Option : 2

Q.16 A, B की बहन है। B, C का पिता है। C, D का भाई है। D, E की पत्नी है। E, F का पिता है। F, G का पति है। परिवार में कितने पुरुष सदस्य हैं?

Ans  1. 3

2. 4

3. 1

4. 2

Question ID : 630680315403

Option 1 ID : 6306801227330

Option 2 ID : 6306801227329

Option 3 ID : 6306801227332

Option 4 ID : 6306801227331

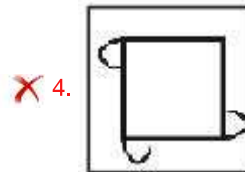
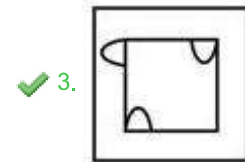
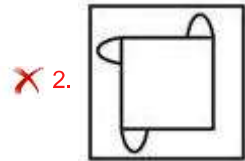
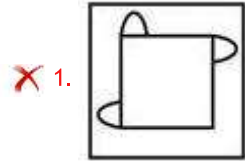
Status : Answered

Chosen Option : 2

KD JOB UPDATES

Q.17 In the following question, select the odd figure from the given alternatives.

Ans



Question ID : 630680315410

Option 1 ID : 6306801227357

Option 2 ID : 6306801227359

Option 3 ID : 6306801227358

Option 4 ID : 6306801227360

Status : Answered

Chosen Option : 4

Q.18 A series is given with one term missing. Select the correct alternative from the given ones that will complete the series.  
HM, LD, PU, TL, ?

- Ans
- 1. TD
  - 2. TM
  - 3. XC
  - 4. YM

Question ID : 630680315401  
Option 1 ID : 6306801227323  
Option 2 ID : 6306801227324  
Option 3 ID : 6306801227321  
Option 4 ID : 6306801227322  
Status : Answered  
Chosen Option : 3

Q.19 In the following question, select the missing number from the given series.  
200, 197, 206, 179, 260, ?

- Ans
- 1. 17
  - 2. 21
  - 3. 88
  - 4. 20

Question ID : 630680315412  
Option 1 ID : 6306801227365  
Option 2 ID : 6306801227367  
Option 3 ID : 6306801227368  
Option 4 ID : 6306801227366  
Status : Not Attempted and Marked For Review  
Chosen Option : --

**Q.20** In the following question, select the related letters from the given alternatives.  
SF : XK :: TG : ?

- Ans  1. YL  
 2. LS  
 3. GL  
 4. YM

Question ID : 630680315405

Option 1 ID : 6306801227337

Option 2 ID : 6306801227340

Option 3 ID : 6306801227339

Option 4 ID : 6306801227338

Status : Answered

Chosen Option : 1

Section : Arithmetical & Numerical Ability

**Q.1** The radius and the height of a conical funnel is in ratio of 5:12 and its volume is  $2512 \text{ cm}^3$  then what would be curved surface area of funnel?

- Ans  1.  $260 \text{ cm}^2$   
 2.  $820 \pi \text{ cm}^2$   
 3.  $26 \pi \text{ cm}^2$   
 4.  $816.4 \text{ cm}^2$

Question ID : 630680315425

Option 1 ID : 6306801227417

Option 2 ID : 6306801227420

Option 3 ID : 6306801227419

Option 4 ID : 6306801227418

Status : Not Attempted and  
Marked For Review

Chosen Option : --

**Q.2** A milkman allows a discount of 16% to his customers and stills gains 20%. Find the marked price of a container of milk which costs the shopkeeper ₹1190.

- Ans**
- 1. ₹1800
  - 2. ₹1723
  - 3. ₹1870
  - 4. ₹1700

Question ID : 630680315419

Option 1 ID : 6306801227394

Option 2 ID : 6306801227396

Option 3 ID : 6306801227393

Option 4 ID : 6306801227395

Status : **Not Attempted and  
Marked For Review**

Chosen Option : --

**Q.3** A conical flask of height 8 m has a curved surface area  $188.4 \text{ m}^2$ . What would be its capacity?

- Ans**
- 1.  $304.44 \text{ m}^3$
  - 2.  $301.44 \text{ m}^3$
  - 3.  $304.56 \text{ m}^3$
  - 4.  $311.44 \text{ m}^3$

Question ID : 630680315426

Option 1 ID : 6306801227421

Option 2 ID : 6306801227424

Option 3 ID : 6306801227422

Option 4 ID : 6306801227423

Status : **Not Attempted and  
Marked For Review**

Chosen Option : --



Q.4 Which number can be used on the place of "y" to make 23478y divisible by 4?

- Ans
- 1. 3
  - 2. 1
  - 3. 2
  - 4. 0

Question ID : 630680315417

Option 1 ID : 6306801227388

Option 2 ID : 6306801227386

Option 3 ID : 6306801227385

Option 4 ID : 6306801227387

Status : Answered

Chosen Option : 4

Q.5 कक्षा का वर्ग चिह्न 100 - 200 है:-

- Ans
- 1. 120
  - 2. 150
  - 3. 200
  - 4. 110

Question ID : 630680315428

Option 1 ID : 6306801227431

Option 2 ID : 6306801227429

Option 3 ID : 6306801227432

Option 4 ID : 6306801227430

Status : Marked For Review

Chosen Option : 2

Q.6 The price of a glass container including 20% GST is ₹825. What is its basic price?

- Ans
- 1. ₹ 1200
  - 2. ₹ 1560
  - 3. ₹1100
  - 4. ₹ 1500

Question ID : 630680315434

Option 1 ID : 6306801227455

Option 2 ID : 6306801227456

Option 3 ID : 6306801227453

Option 4 ID : 6306801227454

Status : Answered

Chosen Option : 3

Q.7 A rectangular chart paper of dimension  $44\text{cm} \times 7\text{cm}$  is rolled along its length to make a cylindrical shape then the volume of new formed shape would be-

- Ans
- 1.  $1078 \text{ cm}^3$
  - 2.  $2319 \text{ cm}^3$
  - 3.  $1345 \text{ cm}^3$
  - 4.  $1178 \text{ cm}^3$

Question ID : 630680315424

Option 1 ID : 6306801227415

Option 2 ID : 6306801227413

Option 3 ID : 6306801227414

Option 4 ID : 6306801227416

Status : Not Attempted and  
Marked For Review

Chosen Option : --

Q.8  $a^{-m} = ?$

Ans  1.  $a/m$

2.  $1/a^m$

3.  $a$

4.  $0$

Question ID : 630680315416

Option 1 ID : 6306801227382

Option 2 ID : 6306801227383

Option 3 ID : 6306801227381

Option 4 ID : 6306801227384

Status : Answered

Chosen Option : 1

Q.9 Nandini built a cubical water tank with lid for her house, with each outer edge 1.5m long. She gets the outer surface of the tank excluding the base covered with square tiles of side 25cm. How much she would spend for the tiles, if cost of tiles is ₹500 per dozen.

Ans  1. ₹7,810

2. ₹7,799

3. ₹7,500

4. ₹ 7,200

Question ID : 630680315422

Option 1 ID : 6306801227408

Option 2 ID : 6306801227407

Option 3 ID : 6306801227405

Option 4 ID : 6306801227406

Status : Not Attempted and  
Marked For Review

Chosen Option : --

Q.10 Simplify:  $20 - [4 + \{16 - (10-4)\}]$

- Ans
- 1. 8
  - 2. 6
  - 3. 9
  - 4. 7

Question ID : 630680315415

Option 1 ID : 6306801227379

Option 2 ID : 6306801227377

Option 3 ID : 6306801227380

Option 4 ID : 6306801227378

Status : Answered

Chosen Option : 2

Q.11 A land is 70 m long and 40 m broad. A pit 10 m long, 8 m broad and 5 m deep is dug in one corner of the land. If the soil extracted from it is spread evenly in the remaining part of the park, then the level of the land will increase-

- Ans
- 1. 14.70m
  - 2. 14.70cm
  - 3. 15m
  - 4. 14.724cm

Question ID : 630680315421

Option 1 ID : 6306801227402

Option 2 ID : 6306801227401

Option 3 ID : 6306801227404

Option 4 ID : 6306801227403

Status : Not Attempted and  
Marked For Review

Chosen Option : --

**Q.12** If T is the amount taken as loan from Bank B, on simple interest for R years at P rate then SI would be -

Ans

1.  $\frac{B \times P \times T}{R}$

2.  $\frac{P \times R \times T}{100}$

3.  $\frac{P \times R \times 100}{T}$

4.  $\frac{B \times P \times T}{100 + R}$

Question ID : 630680315431

Option 1 ID : 6306801227441

Option 2 ID : 6306801227444

Option 3 ID : 6306801227443

Option 4 ID : 6306801227442

Status : Answered

Chosen Option : 2

**Q.13** Steel contains 30% copper, 42% nickel and rest Iron. What would be the mass of Iron in 1 kg of steel.

Ans

1. 225g

2. 150g

3. 280g

4. 265g

Question ID : 630680315433

Option 1 ID : 6306801227449

Option 2 ID : 6306801227451

Option 3 ID : 6306801227452

Option 4 ID : 6306801227450

Status : Answered

Chosen Option : 3

Q.14 p and q vary inversely. When  $p = 15$ , then  $q = 6$ . What will be the value of q when  $p = 9$ ?

Ans  1. 78

2. 152

3. 10

4. 15

Question ID : 630680315420

Option 1 ID : 6306801227398

Option 2 ID : 6306801227397

Option 3 ID : 6306801227400

Option 4 ID : 6306801227399

Status : Answered

Chosen Option : 4

Q.15 Abhay and Barkha, working together can finish a piece of work in 6 days, while Abhay alone can finish it in 9 days.  
How much time will Barkha need to finish same work alone?

Ans  1. 18 days

2. 15 days

3. 14 days

4. 20 days

Question ID : 630680315429

Option 1 ID : 6306801227434

Option 2 ID : 6306801227435

Option 3 ID : 6306801227436

Option 4 ID : 6306801227433

Status : Answered

Chosen Option : 2

**Q.16** There are 1444 cube of woods that has to be kept in such a way that it makes equal number of cubes in each row. How many cubes can be placed at in each row?

- Ans**
- 1. 39
  - 2. 35
  - 3. 36
  - 4. 38

Question ID : 630680315418

Option 1 ID : 6306801227392

Option 2 ID : 6306801227391

Option 3 ID : 6306801227390

Option 4 ID : 6306801227389

Status : Answered

Chosen Option : 4

**Q.17** Let C be the lower-class boundary of a class in a frequency distribution and y be the midpoint of the class then upper-class boundary of the class would be -

- Ans**
- 1.  $y - \frac{(y + C)}{2}$
  - 2.  $y - 2C$
  - 3.  $2y - C$
  - 4.  $C + \frac{(y + C)}{2}$

Question ID : 630680315427

Option 1 ID : 6306801227425

Option 2 ID : 6306801227428

Option 3 ID : 6306801227427

Option 4 ID : 6306801227426

Status : Answered

Chosen Option : 2

**Q.18** Vivek borrowed ₹20,000 from his friend at 12% per annum simple interest. He lent it to Jyoti at same rate but compounded annually. What would he gain after 2 years?

- Ans**
- 1. ₹278
  - 2. ₹290
  - 3. ₹398
  - 4. ₹288

Question ID : 630680315430

Option 1 ID : 6306801227440

Option 2 ID : 6306801227439

Option 3 ID : 6306801227438

Option 4 ID : 6306801227437

Status : **Not Attempted and Marked For Review**

Chosen Option : --

**Q.19** Divya attended her school on 204 days in a full year. If her attendance is 85% then the number of working days of school would be -

- Ans**
- 1. 260
  - 2. 300
  - 3. 240
  - 4. 230

Question ID : 630680315432

Option 1 ID : 6306801227446

Option 2 ID : 6306801227447

Option 3 ID : 6306801227448

Option 4 ID : 6306801227445

Status : **Answered**

Chosen Option : 1



**Q.20** The sum of radius of base and height of a water tank is 37m. If the total surface area of the pin is  $1628 \text{ m}^2$  then volume of water tank would be -

- Ans**
- 1.  $4720 \text{ m}^3$
  - 2.  $4823 \text{ m}^3$
  - 3.  $4620 \text{ m}^3$
  - 4.  $4420 \text{ m}^3$

Question ID : **630680315423**  
Option 1 ID : **6306801227412**  
Option 2 ID : **6306801227411**  
Option 3 ID : **6306801227409**  
Option 4 ID : **6306801227410**  
Status : **Not Attempted and Marked For Review**  
Chosen Option : --

Section : Hindi (Language & Comprehension)

**Q.1** निम्नलिखित प्रश्न में, दिए गए चार विकल्पों में से, उस विकल्प का चयन करें जो दिए गए लोकोक्तियों के अर्थ को सर्वश्रेष्ठ रूप से व्यक्त करता है।  
धुँ के बादल उड़ाना।

- Ans**
- 1. क्रोध में होना
  - 2. मिथ्या भाषण करना
  - 3. केवल सच बोलना
  - 4. आसमान में उड़ना

Question ID : **630680315594**  
Option 1 ID : **6306801228083**  
Option 2 ID : **6306801228084**  
Option 3 ID : **6306801228082**  
Option 4 ID : **6306801228081**  
Status : **Answered**  
Chosen Option : **2**

Q.2 निम्नलिखित प्रश्न में, दिए गए चार विकल्पों में से, उस विकल्प का चयन करें जो दिए गए मुहावरे के अर्थ को सर्वश्रेष्ठ रूप से व्यक्त करता है।  
पासा पलटना

- Ans  1. परिस्थिति का बदल जाना  
 2. गंभीर समस्या आना  
 3. खेल हार जाना  
 4. एक न चलना

Question ID : 630680315593  
Option 1 ID : 6306801228078  
Option 2 ID : 6306801228077  
Option 3 ID : 6306801228080  
Option 4 ID : 6306801228079  
Status : Answered  
Chosen Option : 1

Q.3 दिए गए चार विकल्पों में से, एक सुसंगत अनुच्छेद बनाने के लिए वाक्यों के सबसे तार्किक क्रम का चयन करें।  
क. लोमड़ी ने पूरा जंगल छान मारा लेकिन खाने को कुछ नहीं मिला।  
ख. जंगल में एक चालाक लोमड़ी रहती थी।  
ग. पूरे जंगल में खाने के लिए इधर उधर भटक रही थी।  
घ. एक दिन लोमड़ी भूख के मारे परेशान थी।

- Ans  1. ख, क, ग, घ  
 2. ख, घ, ग, क  
 3. क, घ, ग, ख  
 4. क, घ, ख, ग

Question ID : 630680315583  
Option 1 ID : 6306801228039  
Option 2 ID : 6306801228037  
Option 3 ID : 6306801228040  
Option 4 ID : 6306801228038  
Status : Answered  
Chosen Option : 2

Q.4 दिए गए शब्द का पर्यायवाची ज्ञात कीजिए।  
औषधि

- Ans
- 1. जटिल
  - 2. अनौषधि
  - 3. सुधा
  - 4. दवाई

Question ID : 630680315596

Option 1 ID : 6306801228091

Option 2 ID : 6306801228090

Option 3 ID : 6306801228092

Option 4 ID : 6306801228089

Status : Answered

Chosen Option : 4

Q.5 रिक्त स्थानों की पूर्ति करें।  
चूहे के उछल कूद करने से शेर की \_\_\_\_\_ खुल गई और शेर ने चूहे को पकड़ लिया।

- Ans
- 1. हृदय
  - 2. मस्तिष्क
  - 3. आँख
  - 4. हाथ

Question ID : 630680315588

Option 1 ID : 6306801228059

Option 2 ID : 6306801228058

Option 3 ID : 6306801228057

Option 4 ID : 6306801228060

Status : Answered

Chosen Option : 3

Q.6 दिए गये वाक्य में रेखांकित शब्द को सही कीजिए।  
मुझे पुस्तक पढ़ना अच्छी लगता है।

- Ans
- 1. अच्छाई
  - 2. अच्छी
  - 3. अच्छे
  - 4. अच्छा

Question ID : 630680315586

Option 1 ID : 6306801228050

Option 2 ID : 6306801228052

Option 3 ID : 6306801228051

Option 4 ID : 6306801228049

Status : Answered

Chosen Option : 4

Q.7 दिए गए वाक्यांश के लिए सार्थक शब्द ज्ञात कीजिए।  
जो वन में घूमता हो।

- Ans
- 1. निशाचर
  - 2. उभयचर
  - 3. नभचर
  - 4. वनचर

Question ID : 630680315584

Option 1 ID : 6306801228042

Option 2 ID : 6306801228041

Option 3 ID : 6306801228043

Option 4 ID : 6306801228044

Status : Answered

Chosen Option : 4

Q.8 दिए गए शब्द का विलोम ज्ञात कीजिए।  
भय

- Ans
- 1. निराशा
  - 2. डर
  - 3. दोष
  - 4. साहस

Question ID : 630680315597

Option 1 ID : 6306801228096

Option 2 ID : 6306801228093

Option 3 ID : 6306801228094

Option 4 ID : 6306801228095

Status : Answered

Chosen Option : 4

Q.9 दिए गए चार विकल्पों में से, एक सुसंगत अनुच्छेद बनाने के लिए वाक्यों के सबसे तार्किक क्रम का चयन करें।

- क. रामु नाम का एक किसान गांव में रहता था।  
ख. खेत के काम करने में उसका परिवार उसकी मदद करता था।  
ग. रामु के खेत की फसल बहुत अच्छी होती थी।  
घ. उसके घर के बाहर ही उसका एक छोटा सा खेत था।

- Ans
- 1. घ, क, ग, ख
  - 2. घ, ग, क, ख
  - 3. ख, घ, क, ग
  - 4. क, घ, ख, ग

Question ID : 630680315582

Option 1 ID : 6306801228033

Option 2 ID : 6306801228034

Option 3 ID : 6306801228036

Option 4 ID : 6306801228035

Status : Answered

Chosen Option : 4

Q.10 रिक्त स्थानों की पूर्ति करें।  
योग एक ऐसा उपकरण है जो हमें शारीरिक, मानसिक और आध्यात्मिक स्वास्थ्य में \_\_\_\_\_ प्रदान करता है।

- Ans
- 1. आकार
  - 2. सुधार
  - 3. दुर्बलता
  - 4. खराबी

Question ID : 630680315590  
Option 1 ID : 6306801228068  
Option 2 ID : 6306801228067  
Option 3 ID : 6306801228066  
Option 4 ID : 6306801228065  
Status : Answered  
Chosen Option : 2

Q.11 दिए गए वाक्यांश के लिए सार्थक शब्द ज्ञात कीजिए।  
जिसे जीता नहीं जा सके।

- Ans
- 1. अमर
  - 2. विजेता
  - 3. अज्ञेय
  - 4. अजेय

Question ID : 630680315585  
Option 1 ID : 6306801228046  
Option 2 ID : 6306801228048  
Option 3 ID : 6306801228045  
Option 4 ID : 6306801228047  
Status : Answered  
Chosen Option : 4

Q.12 रिक्त स्थानों की पूर्ति करें।

संगीत एक मानवीय आवश्यकता है, जो हमारे जीवन को \_\_\_\_\_ बनाती है और हमें दुनियाभर की भाषाओं में बात करने की क्षमता प्रदान करती है।

Ans  1. प्रदूषित

2. सुंदर

3. अस्थिर

4. बुरा

Question ID : 630680315591

Option 1 ID : 6306801228072

Option 2 ID : 6306801228069

Option 3 ID : 6306801228071

Option 4 ID : 6306801228070

Status : Answered

Chosen Option : 2

Q.13 दिए गए शब्द का पर्यायवाची ज्ञात कीजिए।  
तालाब

Ans  1. शमशीर

2. दिनकर

3. सरोवर

4. कृपाण

Question ID : 630680315595

Option 1 ID : 6306801228085

Option 2 ID : 6306801228086

Option 3 ID : 6306801228087

Option 4 ID : 6306801228088

Status : Answered

Chosen Option : 3

Q.14 दिए गये वाक्य में रेखांकित शब्द को सही कीजिए।  
रवि को बाहर घूमना पसंद हू।

- Ans
- 1. हो
  - 2. ही
  - 3. है
  - 4. हूँ

Question ID : 630680315587  
Option 1 ID : 6306801228053  
Option 2 ID : 6306801228055  
Option 3 ID : 6306801228054  
Option 4 ID : 6306801228056  
Status : Answered  
Chosen Option : 3

Q.15 निम्नलिखित प्रश्न में, दिए गए चार विकल्पों में से, उस विकल्प का चयन करें जो दिए गए मुहावरे के अर्थ को सर्वश्रेष्ठ रूप से व्यक्त करता है।  
पलड़ा भारी होना

- Ans
- 1. कमजोर पड़ना
  - 2. अधिक वजनदार
  - 3. दिखावा करना
  - 4. पक्ष मजबूत होना

Question ID : 630680315592  
Option 1 ID : 6306801228074  
Option 2 ID : 6306801228073  
Option 3 ID : 6306801228076  
Option 4 ID : 6306801228075  
Status : Answered  
Chosen Option : 4



Q.16 रिक्त स्थानों की पूर्ति करें।  
प्रदूषण एक गंभीर समस्या है, जो हमारे आस पास के वातावरण को \_\_\_\_\_ में डाल रही है।

- Ans
- 1. सहायता
  - 2. आवास
  - 3. खतरे
  - 4. अवसर

Question ID : 630680315589

Option 1 ID : 6306801228064

Option 2 ID : 6306801228062

Option 3 ID : 6306801228063

Option 4 ID : 6306801228061

Status : Answered

Chosen Option : 3

KD JOB UPDATES

### Comprehension:

एक गद्यांश दिया गया है। गद्यांश के आधार पर चार प्रश्न दिए गए हैं। गद्यांश को ध्यानपूर्वक पढ़ें तथा प्रत्येक प्रश्न के चार विकल्पों में से सही विकल्प चुने।

केला एक ऐसा फल है, जिसकी पैदावार पूरे साल होती है। केला मौसमी फल नहीं होता है इसलिए यह पूरे साल बाजार में उपलब्ध रहता है।

यही कारण है कि यह सबसे अधिक खाए जाने वाले फलों में से एक है। पूरे विश्व में केले का सबसे अधिक उत्पादन भारत में ही होता है। केला पीले रंग का होता है जिस पर अक्सर काले धब्बे भी पड़ जाते हैं।

केले में विटामिन ए, विटामिन बी और विटामिन सी भरपूर मात्रा में पाया जाता है। इसके अतिरिक्त केले में पोटेशियम, कैल्शियम, सोडियम, फास्फोरस, मैग्नीशियम और आयरन जैसे खनिज भी होते हैं। कैल्शियम और फास्फोरस हड्डियों और दाँतों के लिए अत्यंत ही लाभदायक होता है, क्योंकि हमारी हड्डियाँ और दाँत इन्हीं दोनों खनिजों से मिलकर बने होते हैं। पके केले को दूध के साथ खाने से वजन बढ़ता है, इसीलिए लोग वजन बढ़ाने के लिए केले को दूध के साथ भी खाते हैं।

जब पेड़ पर केला कच्ची अवस्था में होता है तो यह हरे रंग का होता है, परंतु पकने के बाद यह पीले रंग का हो जाता है। कच्चे केले का उपयोग सब्जी बनाने में भी किया जाता है। केले के फल के अलावा केले के पत्तों के भी अनेक फायदे होते हैं। केले के पत्ते पर भोजन खाना सेहत के लिए अत्यंत ही लाभदायक माना जाता है। दक्षिण भारत में आज भी समारोह आदि पर लोग केले के पत्तों पर ही खाना खाते हैं।

केले की खेती करने वाले मुख्य देश भारत, चीन, युगांडा, इंडोनेशिया, ब्राजील और फिलीपींस हैं। भारत में केले की खेती मुख्य रूप से तमिलनाडु, आंध्र प्रदेश, कर्नाटक, महाराष्ट्र, गुजरात, उत्तर प्रदेश, मध्य प्रदेश, बिहार, पश्चिम बंगाल और असम में की जाती है।

### SubQuestion No : 17

Q.17 हमारे दाँत और हड्डियाँ किससे बने हैं?

- Ans
- 1. आयरन
  - 2. प्रोटीन और वसा
  - 3. कैल्शियम और फास्फोरस
  - 4. विटामिन सी और ए

Question ID : 630680315580

Option 1 ID : 6306801228026

Option 2 ID : 6306801228027

Option 3 ID : 6306801228028

Option 4 ID : 6306801228025

Status : Answered

Chosen Option : 3

### Comprehension:

एक गद्यांश दिया गया है। गद्यांश के आधार पर चार प्रश्न दिए गए हैं। गद्यांश को ध्यानपूर्वक पढ़ें तथा प्रत्येक प्रश्न के चार विकल्पों में से सही विकल्प चुने।

केला एक ऐसा फल है, जिसकी पैदावार पूरे साल होती है। केला मौसमी फल नहीं होता है इसलिए यह पूरे साल बाजार में उपलब्ध रहता है।

यही कारण है कि यह सबसे अधिक खाए जाने वाले फलों में से एक है। पूरे विश्व में केले का सबसे अधिक उत्पादन भारत में ही होता है। केला पीले रंग का होता है जिस पर अक्सर काले धब्बे भी पड़ जाते हैं।

केले में विटामिन ए, विटामिन बी और विटामिन सी भरपूर मात्रा में पाया जाता है। इसके अतिरिक्त केले में पोटेशियम, कैल्शियम, सोडियम, फास्फोरस, मैग्नीशियम और आयरन जैसे खनिज भी होते हैं। कैल्शियम और फास्फोरस हड्डियों और दाँतों के लिए अत्यंत ही लाभदायक होता है, क्योंकि हमारी हड्डियाँ और दाँत इन्हीं दोनों खनिजों से मिलकर बने होते हैं। पके केले को दूध के साथ खाने से वजन बढ़ता है, इसीलिए लोग वजन बढ़ाने के लिए केले को दूध के साथ भी खाते हैं।

जब पेड़ पर केला कच्ची अवस्था में होता है तो यह हरे रंग का होता है, परंतु पकने के बाद यह पीले रंग का हो जाता है। कच्चे केले का उपयोग सब्जी बनाने में भी किया जाता है। केले के फल के अलावा केले के पत्तों के भी अनेक फायदे होते हैं। केले के पत्ते पर भोजन खाना सेहत के लिए अत्यंत ही लाभदायक माना जाता है। दक्षिण भारत में आज भी समारोह आदि पर लोग केले के पत्तों पर ही खाना खाते हैं।

केले की खेती करने वाले मुख्य देश भारत, चीन, युगांडा, इंडोनेशिया, ब्राजील और फिलीपींस हैं। भारत में केले की खेती मुख्य रूप से तमिलनाडु, आंध्र प्रदेश, कर्नाटक, महाराष्ट्र, गुजरात, उत्तर प्रदेश, मध्य प्रदेश, बिहार, पश्चिम बंगाल और असम में की जाती है।

### SubQuestion No : 18

Q.18 गद्यांश के अनुसार कौन सा विटामिन केले में नहीं पाया जाता है?

- Ans
- 1. विटामिन सी
  - 2. विटामिन बी
  - 3. विटामिन डी
  - 4. विटामिन ए

Question ID : 630680315579

Option 1 ID : 6306801228021

Option 2 ID : 6306801228023

Option 3 ID : 6306801228024

Option 4 ID : 6306801228022

Status : Answered

Chosen Option : 3

### Comprehension:

एक गद्यांश दिया गया है। गद्यांश के आधार पर चार प्रश्न दिए गए हैं। गद्यांश को ध्यानपूर्वक पढ़ें तथा प्रत्येक प्रश्न के चार विकल्पों में से सही विकल्प चुने।

केला एक ऐसा फल है, जिसकी पैदावार पूरे साल होती है। केला मौसमी फल नहीं होता है इसलिए यह पूरे साल बाजार में उपलब्ध रहता है।

यही कारण है कि यह सबसे अधिक खाए जाने वाले फलों में से एक है। पूरे विश्व में केले का सबसे अधिक उत्पादन भारत में ही होता है। केला पीले रंग का होता है जिस पर अक्सर काले धब्बे भी पड़ जाते हैं।

केले में विटामिन ए, विटामिन बी और विटामिन सी भरपूर मात्रा में पाया जाता है। इसके अतिरिक्त केले में पोटेशियम, कैल्शियम, सोडियम, फास्फोरस, मैग्नीशियम और आयरन जैसे खनिज भी होते हैं। कैल्शियम और फास्फोरस हड्डियों और दाँतों के लिए अत्यंत ही लाभदायक होता है, क्योंकि हमारी हड्डियाँ और दाँत इन्हीं दोनों खनिजों से मिलकर बने होते हैं। पके केले को दूध के साथ खाने से वजन बढ़ता है, इसीलिए लोग वजन बढ़ाने के लिए केले को दूध के साथ भी खाते हैं।

जब पेड़ पर केला कच्ची अवस्था में होता है तो यह हरे रंग का होता है, परंतु पकने के बाद यह पीले रंग का हो जाता है। कच्चे केले का उपयोग सब्जी बनाने में भी किया जाता है। केले के फल के अलावा केले के पत्तों के भी अनेक फायदे होते हैं। केले के पत्ते पर भोजन खाना सेहत के लिए अत्यंत ही लाभदायक माना जाता है। दक्षिण भारत में आज भी समारोह आदि पर लोग केले के पत्तों पर ही खाना खाते हैं।

केले की खेती करने वाले मुख्य देश भारत, चीन, युगांडा, इंडोनेशिया, ब्राजील और फिलीपींस हैं। भारत में केले की खेती मुख्य रूप से तमिलनाडु, आंध्र प्रदेश, कर्नाटक, महाराष्ट्र, गुजरात, उत्तर प्रदेश, मध्य प्रदेश, बिहार, पश्चिम बंगाल और असम में की जाती है।

### SubQuestion No : 19

Q.19 दिए गए अपठित गद्यांश का उपयुक्त शीर्षक क्या होगा?

- Ans
- 1. फलों का राजा
  - 2. केले के पत्ते
  - 3. विदेशों में केला
  - 4. पोषण से भरपूर केला

Question ID : 630680315578

Option 1 ID : 6306801228020

Option 2 ID : 6306801228018

Option 3 ID : 6306801228019

Option 4 ID : 6306801228017

Status : Answered

Chosen Option : 4

### Comprehension:

एक गद्यांश दिया गया है। गद्यांश के आधार पर चार प्रश्न दिए गए हैं। गद्यांश को ध्यानपूर्वक पढ़ें तथा प्रत्येक प्रश्न के चार विकल्पों में से सही विकल्प चुने।

केला एक ऐसा फल है, जिसकी पैदावार पूरे साल होती है। केला मौसमी फल नहीं होता है इसलिए यह पूरे साल बाजार में उपलब्ध रहता है।

यही कारण है कि यह सबसे अधिक खाए जाने वाले फलों में से एक है। पूरे विश्व में केले का सबसे अधिक उत्पादन भारत में ही होता है। केला पीले रंग का होता है जिस पर अक्सर काले धब्बे भी पड़ जाते हैं।

केले में विटामिन ए, विटामिन बी और विटामिन सी भरपूर मात्रा में पाया जाता है। इसके अतिरिक्त केले में पोटेशियम, कैल्शियम, सोडियम, फास्फोरस, मैग्नीशियम और आयरन जैसे खनिज भी होते हैं। कैल्शियम और फास्फोरस हड्डियों और दाँतों के लिए अत्यंत ही लाभदायक होता है, क्योंकि हमारी हड्डियाँ और दाँत इन्हीं दोनों खनिजों से मिलकर बने होते हैं। पके केले को दूध के साथ खाने से वजन बढ़ता है, इसीलिए लोग वजन बढ़ाने के लिए केले को दूध के साथ भी खाते हैं।

जब पेड़ पर केला कच्ची अवस्था में होता है तो यह हरे रंग का होता है, परंतु पकने के बाद यह पीले रंग का हो जाता है। कच्चे केले का उपयोग सब्जी बनाने में भी किया जाता है। केले के फल के अलावा केले के पत्तों के भी अनेक फायदे होते हैं। केले के पत्ते पर भोजन खाना सेहत के लिए अत्यंत ही लाभदायक माना जाता है। दक्षिण भारत में आज भी समारोह आदि पर लोग केले के पत्तों पर ही खाना खाते हैं।

केले की खेती करने वाले मुख्य देश भारत, चीन, युगांडा, इंडोनेशिया, ब्राजील और फिलीपींस हैं। भारत में केले की खेती मुख्य रूप से तमिलनाडु, आंध्र प्रदेश, कर्नाटक, महाराष्ट्र, गुजरात, उत्तर प्रदेश, मध्य प्रदेश, बिहार, पश्चिम बंगाल और असम में की जाती है।

### SubQuestion No : 20

Q.20 केला किस समय बाज़ार में मिलता है?

- Ans  1. केवल वसंत ऋतु  
 2. पूरे साल  
 3. केवल सर्दी  
 4. केवल गर्मी

Question ID : 630680315581

Option 1 ID : 6306801228032

Option 2 ID : 6306801228031

Option 3 ID : 6306801228029

Option 4 ID : 6306801228030

Status : Answered

Chosen Option : 2

**Q.1** Fill in the missing word to complete the sentences below:

\_\_\_\_\_ the traffic was bad, I arrived on time.

**Ans** ✓ 1. Although

✗ 2. In spite of the

✗ 3. Though

✗ 4. Because

Question ID : 630680312154

Option 1 ID : 6306801214509

Option 2 ID : 6306801214510

Option 3 ID : 6306801214511

Option 4 ID : 6306801214512

Status : Answered

Chosen Option : 1

**Q.2** Choose the most appropriate meaning of the below mentioned word from the below options:

**Obligation**

**Ans** ✓ 1. Duty

✗ 2. Irresponsibility

✗ 3. Disbelief

✗ 4. Freedom

Question ID : 630680312164

Option 1 ID : 6306801214549

Option 2 ID : 6306801214552

Option 3 ID : 6306801214551

Option 4 ID : 6306801214550

Status : Answered

Chosen Option : 1

**Q.3** Choose the most appropriate one-word substitution for “Succession of rulers belonging to one family”

**Ans** ✓ 1. Dynasty

✗ 2. Progeny

✗ 3. Ancestry

✗ 4. Lineage

Question ID : 630680312151

Option 1 ID : 6306801214497

Option 2 ID : 6306801214500

Option 3 ID : 6306801214499

Option 4 ID : 6306801214498

Status : Answered

Chosen Option : 3

**Q.4** Choose the most suitable word to complete the below sentences:

Being poor is not \_\_\_ Lim is ashamed of.

**Ans** ✗ 1. However

✗ 2. anything

✗ 3. for

✓ 4. something

Question ID : 630680312156

Option 1 ID : 6306801214519

Option 2 ID : 6306801214517

Option 3 ID : 6306801214520

Option 4 ID : 6306801214518

Status : Answered

Chosen Option : 3

**Q.5** Choose the most appropriate opposite meaning of the below mentioned word from the below options:  
**Primitive**

- Ans**  1. Sophisticated  
 2. Archaic  
 3. Undeveloped  
 4. Pristine

Question ID : 630680312163

Option 1 ID : 6306801214548

Option 2 ID : 6306801214547

Option 3 ID : 6306801214546

Option 4 ID : 6306801214545

Status : **Not Attempted and  
Marked For Review**

Chosen Option : --

**Q.6** Choose the most suitable word to complete the below sentences:

Collecting stamps is Ashok's hobby. He started \_\_\_ stamps when he was 10years old.

- Ans**  1. To collecting  
 2. Will collect  
 3. Collecting  
 4. collected

Question ID : 630680312159

Option 1 ID : 6306801214529

Option 2 ID : 6306801214532

Option 3 ID : 6306801214531

Option 4 ID : 6306801214530

Status : **Answered**

Chosen Option : 3



**Q.7** Choose the most appropriate meaning of the below quoted idiom from the below options:

“Break a leg”

- Ans**
- 1. Wishing bad for someone
  - 2. Saying Goodluck, but with bad intentions
  - 3. Threatening someone
  - 4. Saying good luck to someone

Question ID : 630680312161

Option 1 ID : 6306801214539

Option 2 ID : 6306801214540

Option 3 ID : 6306801214538

Option 4 ID : 6306801214537

Status : Answered

Chosen Option : 2

**Q.8** Choose the most appropriate meaning of the below quoted idiom from the below options:

“Fair and Square”

- Ans**
- 1. Being direct or fair
  - 2. Being bold and fearless
  - 3. Being yourself
  - 4. Being unfair and cheat

Question ID : 630680312160

Option 1 ID : 6306801214534

Option 2 ID : 6306801214533

Option 3 ID : 6306801214535

Option 4 ID : 6306801214536

Status : Answered

Chosen Option : 3

**Q.9** Choose the most appropriate one-word substitution for “A place where everything is perfect”

**Ans** ✓ 1. Utopia

✗ 2. Platoon

✗ 3. Cosmos

✗ 4. Heaven

Question ID : 630680312150

Option 1 ID : 6306801214496

Option 2 ID : 6306801214494

Option 3 ID : 6306801214495

Option 4 ID : 6306801214493

Status : Answered

Chosen Option : 4

**Q.10** Choose the most appropriate meaning of the below mentioned word from the below options:

**Hostile**

**Ans** ✗ 1. Warm

✗ 2. Hospitable

✗ 3. Friendly

✓ 4. Adverse

Question ID : 630680312165

Option 1 ID : 6306801214554

Option 2 ID : 6306801214553

Option 3 ID : 6306801214556

Option 4 ID : 6306801214555

Status : Answered

Chosen Option : 4

**Q.11** Choose the most suitable word to complete the below sentences:

The amount of money he donates is \_\_\_ small as he does not earn much working as a laborer.

**Ans** ✓ 1. rather

✗ 2. although

✗ 3. on

✗ 4. while

Question ID : 630680312157

Option 1 ID : 6306801214523

Option 2 ID : 6306801214521

Option 3 ID : 6306801214524

Option 4 ID : 6306801214522

Status : Answered

Chosen Option : 2

**Q.12** Fill in the missing word to complete the sentences below:

He did not trust me. He was \_\_\_ my intentions

**Ans** ✗ 1. Aware of

✓ 2. Suspicious of

✗ 3. Sure of

✗ 4. Capable of

Question ID : 630680312153

Option 1 ID : 6306801214508

Option 2 ID : 6306801214506

Option 3 ID : 6306801214505

Option 4 ID : 6306801214507

Status : Answered

Chosen Option : 1

**Q.13** Choose the most logical order of the sentences from among the four given choices to construct a coherent paragraph. For any organization, proper financial management is key to ensuring the company's growth, profitability, and long-term sustainability.

**A)** Of the two primary financial statements, the balance sheet and the income statement, a balance sheet is the most suitable option for analyzing the specifics of credit extension towards suppliers.

**B)** A crucial aspect of financial management is conducting regular financial analyses, which provide an insight into the organization's overall financial health.

**C)** If a financial analysis is to be conducted with only one form of the financial statement, a balance sheet should be used.

**D)** An income statement might provide information about current income and expenditures, but it presents an incomplete picture of the organization's financial health.

**Ans** ✓ 1. BACD

✗ 2. ABCD

✗ 3. BCAD

✗ 4. DACB

Question ID : 630680312155

Option 1 ID : 6306801214513

Option 2 ID : 6306801214514

Option 3 ID : 6306801214516

Option 4 ID : 6306801214515

Status : Answered

Chosen Option : 1

**Q.14** Choose the most appropriate one-word substitution for the bracketed word from the below sentence.

(We had picked the baby up) and went straight to the police station.

**Ans** ✗ 1. We have been picking up

✗ 2. We have picked the baby up

✗ 3. We picked the baby up

✓ 4. The baby up

Question ID : 630680312152

Option 1 ID : 6306801214504

Option 2 ID : 6306801214501

Option 3 ID : 6306801214502

Option 4 ID : 6306801214503

Status : Answered

Chosen Option : 3

**Q.15** Choose the most appropriate opposite meaning of the below mentioned word from the below options:

**Turmoil**

- Ans**  1. Unrest  
 2. Confusion  
 3. Tension  
 4. Tranquility

Question ID : 630680312162

Option 1 ID : 6306801214544

Option 2 ID : 6306801214541

Option 3 ID : 6306801214542

Option 4 ID : 6306801214543

Status : Answered

Chosen Option : 1

**Q.16** Choose the most suitable word to complete the below sentences:

The colourful display of regimental \_\_\_\_\_ and pageantry was the first of its kind since 1974.

- Ans**  1. amiss  
 2. Inaccuracy  
 3. precision  
 4. decision

Question ID : 630680312158

Option 1 ID : 6306801214528

Option 2 ID : 6306801214525

Option 3 ID : 6306801214526

Option 4 ID : 6306801214527

Status : Answered

Chosen Option : 2

### Comprehension:

Rubber, once a natural resource found only in Brazil and South America, has become an indispensable part of modern life.. The demand for rubber has grown to such an extent that synthetic and man-made rubber are now being produced on a large scale to keep up with it.

Rubber can be found in practically every aspect of our lives. In our homes, it can be found on radios, televisions, telephones, and electric appliances such as irons, toasters, and coffee percolators. It is used in kitchen appliances such as vacuum cleaners and refrigerators. Rubber is also found in common household items such as erasers, elastic bands, and vulcanized fountain pens. Foam rubber is used to make mattresses, and rubber hot water bottles are essential in colder climates.

Rubber is also used in unexpected ways. Rubber is also used to make raincoats, and it is used in the manufacture of balls, from beach balls to golf balls. It is even used in furniture and gymnastic equipment. Rubber is an essential component of transportation. Pneumatic tires, first patented by J.B. Dunlop in 1888, are used on motor vehicles, and rubber is used in the construction of roads, pavements, and the steps of buses and trams. Rubber bearing springs and sealing systems in the rake mechanisms of airplanes, ships, and cars add considerably to our comfort.

Rubber also plays a role in healthcare. It is used for soundproof flooring, tyres on wheelchairs, and rubber rollers on beds and trolleys in hospitals. Rubber is waterproof, which makes it ideal for use in medical environments. In short, rubber has become an essential part of modern life, serving us in countless ways. From household items to transportation, and from healthcare to agriculture, rubber's versatility has made it an indispensable material.

### SubQuestion No : 17

**Q.17 Identify the central theme of the passage**

- Ans**  1. Various form of rubber and its versatile uses are great for modern life
2. Rubber plays an important role only in healthcare industry
3. Rubber cannot be found in practically every aspect of our lives
4. Rubber is an expensive material and should not be used

Question ID : 630680312146

Option 1 ID : 6306801214478

Option 2 ID : 6306801214479

Option 3 ID : 6306801214480

Option 4 ID : 6306801214477

Status : **Answered**

Chosen Option : **2**

### Comprehension:

Rubber, once a natural resource found only in Brazil and South America, has become an indispensable part of modern life.. The demand for rubber has grown to such an extent that synthetic and man-made rubber are now being produced on a large scale to keep up with it.

Rubber can be found in practically every aspect of our lives. In our homes, it can be found on radios, televisions, telephones, and electric appliances such as irons, toasters, and coffee percolators. It is used in kitchen appliances such as vacuum cleaners and refrigerators. Rubber is also found in common household items such as erasers, elastic bands, and vulcanized fountain pens. Foam rubber is used to make mattresses, and rubber hot water bottles are essential in colder climates.

Rubber is also used in unexpected ways. Rubber is also used to make raincoats, and it is used in the manufacture of balls, from beach balls to golf balls. It is even used in furniture and gymnastic equipment. Rubber is an essential component of transportation. Pneumatic tires, first patented by J.B. Dunlop in 1888, are used on motor vehicles, and rubber is used in the construction of roads, pavements, and the steps of buses and trams. Rubber bearing springs and sealing systems in the rake mechanisms of airplanes, ships, and cars add considerably to our comfort.

Rubber also plays a role in healthcare. It is used for soundproof flooring, tyres on wheelchairs, and rubber rollers on beds and trolleys in hospitals. Rubber is waterproof, which makes it ideal for use in medical environments. In short, rubber has become an essential part of modern life, serving us in countless ways. From household items to transportation, and from healthcare to agriculture, rubber's versatility has made it an indispensable material.

### SubQuestion No : 18

Q.18 What is the meaning of "indispensable"?

- Ans
- 1. needless
  - 2. Essential
  - 3. Unwanted
  - 4. Unnecessary

Question ID : 630680312148

Option 1 ID : 6306801214487

Option 2 ID : 6306801214485

Option 3 ID : 6306801214488

Option 4 ID : 6306801214486

Status : Answered

Chosen Option : 2

### Comprehension:

Rubber, once a natural resource found only in Brazil and South America, has become an indispensable part of modern life.. The demand for rubber has grown to such an extent that synthetic and man-made rubber are now being produced on a large scale to keep up with it.

Rubber can be found in practically every aspect of our lives. In our homes, it can be found on radios, televisions, telephones, and electric appliances such as irons, toasters, and coffee percolators. It is used in kitchen appliances such as vacuum cleaners and refrigerators. Rubber is also found in common household items such as erasers, elastic bands, and vulcanized fountain pens. Foam rubber is used to make mattresses, and rubber hot water bottles are essential in colder climates.

Rubber is also used in unexpected ways. Rubber is also used to make raincoats, and it is used in the manufacture of balls, from beach balls to golf balls. It is even used in furniture and gymnastic equipment. Rubber is an essential component of transportation. Pneumatic tires, first patented by J.B. Dunlop in 1888, are used on motor vehicles, and rubber is used in the construction of roads, pavements, and the steps of buses and trams. Rubber bearing springs and sealing systems in the rake mechanisms of airplanes, ships, and cars add considerably to our comfort.

Rubber also plays a role in healthcare. It is used for soundproof flooring, tyres on wheelchairs, and rubber rollers on beds and trolleys in hospitals. Rubber is waterproof, which makes it ideal for use in medical environments. In short, rubber has become an essential part of modern life, serving us in countless ways. From household items to transportation, and from healthcare to agriculture, rubber's versatility has made it an indispensable material.

### SubQuestion No : 19

**Q.19 Identify the suitable title for the passage**

- Ans
- 1. Healthcare & Rubber
  - 2. Rubber and its usage
  - 3. The Versatility of Rubber in Modern Life
  - 4. Evolution of Rubber in Human life

Question ID : 630680312147

Option 1 ID : 6306801214482

Option 2 ID : 6306801214484

Option 3 ID : 6306801214483

Option 4 ID : 6306801214481

Status : Answered

Chosen Option : 3



### Comprehension:

Rubber, once a natural resource found only in Brazil and South America, has become an indispensable part of modern life.. The demand for rubber has grown to such an extent that synthetic and man-made rubber are now being produced on a large scale to keep up with it.

Rubber can be found in practically every aspect of our lives. In our homes, it can be found on radios, televisions, telephones, and electric appliances such as irons, toasters, and coffee percolators. It is used in kitchen appliances such as vacuum cleaners and refrigerators. Rubber is also found in common household items such as erasers, elastic bands, and vulcanized fountain pens. Foam rubber is used to make mattresses, and rubber hot water bottles are essential in colder climates.

Rubber is also used in unexpected ways. Rubber is also used to make raincoats, and it is used in the manufacture of balls, from beach balls to golf balls. It is even used in furniture and gymnastic equipment. Rubber is an essential component of transportation. Pneumatic tires, first patented by J.B. Dunlop in 1888, are used on motor vehicles, and rubber is used in the construction of roads, pavements, and the steps of buses and trams. Rubber bearing springs and sealing systems in the rake mechanisms of airplanes, ships, and cars add considerably to our comfort.

Rubber also plays a role in healthcare. It is used for soundproof flooring, tyres on wheelchairs, and rubber rollers on beds and trolleys in hospitals. Rubber is waterproof, which makes it ideal for use in medical environments. In short, rubber has become an essential part of modern life, serving us in countless ways. From household items to transportation, and from healthcare to agriculture, rubber's versatility has made it an indispensable material.

### SubQuestion No : 20

**Q.20 Identify the inferences drawn from the passage**

- Ans**
- 1. Rubber is not easily found in household items and thus is quite expensive
  - 2. Rubber bearing springs and sealing systems are the only source of comfort
  - 3. Rubber is not and indispensable material and can be easily replaced by other materials
  - 4. From household items to transportation, and from healthcare to agriculture, rubber's versatility has made it an indispensable material

Question ID : 630680312149

Option 1 ID : 6306801214492

Option 2 ID : 6306801214491

Option 3 ID : 6306801214490

Option 4 ID : 6306801214489

Status : Answered

Chosen Option : 4

**Q.1 Which of the following is the default file format in power point presentation in PowerPoint version 2007 or newer?**

- Ans**
- 1. .pptm
  - 2. .ppt
  - 3. .pptx
  - 4. .ppta

Question ID : 630680315448

Option 1 ID : 6306801227512

Option 2 ID : 6306801227510

Option 3 ID : 6306801227511

Option 4 ID : 6306801227509

Status : Answered

Chosen Option : 2

**Q.2 Which of the following menu of MS-2010 includes track change command?**

- Ans**
- 1. Home
  - 2. View
  - 3. Review
  - 4. Insert

Question ID : 630680315443

Option 1 ID : 6306801227489

Option 2 ID : 6306801227492

Option 3 ID : 6306801227491

Option 4 ID : 6306801227490

Status : Answered

Chosen Option : 1

**Q.3 Which of the following is an operating system?**

- Ans
- 1. Debugger
  - 2. Mozilla
  - 3. Google chrome
  - 4. Linux

Question ID : 630680315440

Option 1 ID : 6306801227478

Option 2 ID : 6306801227480

Option 3 ID : 6306801227479

Option 4 ID : 6306801227477

Status : Answered

Chosen Option : 1

**Q.4 In PowerPoint, what are the objects used to hold text on a slide called?**

- Ans
- 1. Textbox
  - 2. Placeholders
  - 3. Text holders
  - 4. Esc key

Question ID : 630680315450

Option 1 ID : 6306801227518

Option 2 ID : 6306801227517

Option 3 ID : 6306801227519

Option 4 ID : 6306801227520

Status : Answered

Chosen Option : 3

**Q.5** In a spread sheet When we place the mouse pointer over any of the buttons or icons on the toolbars the name of the icon appears as which of the following?

- Ans**
- 1. Horizontal Scroll Bar
  - 2. Tooltip
  - 3. Docking Toolbars
  - 4. Scroll Bars

Question ID : 630680315446

Option 1 ID : 6306801227503

Option 2 ID : 6306801227502

Option 3 ID : 6306801227504

Option 4 ID : 6306801227501

Status : Answered

Chosen Option : 1

**Q.6** Which of the following shortcut key(s) is/are used to make the letters bold in a word file?

- Ans**
- 1. CTRL+B
  - 2. CTRL+V
  - 3. CTRL+I
  - 4. CTRL+N

Question ID : 630680315442

Option 1 ID : 6306801227485

Option 2 ID : 6306801227488

Option 3 ID : 6306801227487

Option 4 ID : 6306801227486

Status : Answered

Chosen Option : 1

**Q.7** In a spread sheet Which of the following short cut key(s) is used to select all the columns in the current row?

- Ans**
- 1. Ctrl + Shift + Spacebar
  - 2. Ctrl + A
  - 3. Shift + Spacebar+Tab
  - 4. Shift + Spacebar

Question ID : 630680315447

Option 1 ID : 6306801227506

Option 2 ID : 6306801227507

Option 3 ID : 6306801227508

Option 4 ID : 6306801227505

Status : Answered

Chosen Option : 2

**Q.8** Which among the following is correctly matched regarding start menu of Windows xp?

- Ans**
- 1. All Programs - Displays a list of installed program, which a user can start or use.
  - 2. Control Panel - Displays a list of utility configure the computer system and install only hardware
  - 3. Control Panel - Displays a list of utility configure the computer system and install only software
  - 4. My Documents - Displays a list of installed program, which a user can start or use

Question ID : 630680315438

Option 1 ID : 6306801227470

Option 2 ID : 6306801227469

Option 3 ID : 6306801227472

Option 4 ID : 6306801227471

Status : Answered

Chosen Option : 1

**Q.9 Which e-governance service provides a single platform for various government services?**

- Ans**
- 1. e- Passport service
  - 2. Aasmaan app
  - 3. Umbrella App
  - 4. UMANG

Question ID : 630680315454

Option 1 ID : 6306801227534

Option 2 ID : 6306801227536

Option 3 ID : 6306801227535

Option 4 ID : 6306801227533

Status : Answered

Chosen Option : 1

**Q.10 Which section of the IT Act 2000 deals with the punishment for violation of privacy.?**

- Ans**
- 1. 66 E
  - 2. 67
  - 3. 66 F
  - 4. 66 D

Question ID : 630680315451

Option 1 ID : 6306801227522

Option 2 ID : 6306801227524

Option 3 ID : 6306801227523

Option 4 ID : 6306801227521

Status : Answered

Chosen Option : 1

**Q.11** What is the largest font size that can be selected using font size drop down list in MS Word 2010?

- Ans
- 1. 65
  - 2. 70
  - 3. 66
  - 4. 72

Question ID : 630680315444

Option 1 ID : 6306801227495

Option 2 ID : 6306801227494

Option 3 ID : 6306801227496

Option 4 ID : 6306801227493

Status : Answered

Chosen Option : 1

**Q.12** What is the full form of V.D.U.?

- Ans
- 1. Verbal Discuss Unit
  - 2. Visual Discuss Unit
  - 3. Visual Display Unit
  - 4. Verbal Display Unit

Question ID : 630680315437

Option 1 ID : 6306801227468

Option 2 ID : 6306801227465

Option 3 ID : 6306801227467

Option 4 ID : 6306801227466

Status : Answered

Chosen Option : 3

Q.13 The e-Tourist Visa which was introduced in which of the following year?

- Ans
- 1. 2010
  - 2. 2012
  - 3. 2019
  - 4. 2014

Question ID : 630680315453

Option 1 ID : 6306801227530

Option 2 ID : 6306801227529

Option 3 ID : 6306801227532

Option 4 ID : 6306801227531

Status : Answered

Chosen Option : 4

Q.14 When the program or window is closed, the icon disappears from which of the following?

- Ans
- 1. Task Bar
  - 2. Tool bar
  - 3. Menu bar
  - 4. Status bar

Question ID : 630680315439

Option 1 ID : 6306801227476

Option 2 ID : 6306801227473

Option 3 ID : 6306801227474

Option 4 ID : 6306801227475

Status : Answered

Chosen Option : 4



Q.15 Which of the following is the default standard layout in PowerPoint?

Ans  1. Title and content slide

2. Title slide

3. Blank slide

4. content slide

Question ID : 630680315449

Option 1 ID : 6306801227514

Option 2 ID : 6306801227515

Option 3 ID : 6306801227513

Option 4 ID : 6306801227516

Status : **Not Attempted and  
Marked For Review**

Chosen Option : --

Q.16 The word computer is derived from the word 'compute' which means \_\_\_\_\_?

Ans  1. Data Processor

2. Calculator

3. Calculate

4. Information

Question ID : 630680315435

Option 1 ID : 6306801227457

Option 2 ID : 6306801227459

Option 3 ID : 6306801227460

Option 4 ID : 6306801227458

Status : **Answered**

Chosen Option : 1

Q.17 It is designed to help quickly find the commands to complete a task. What is being discussed here?

- Ans  1. Ribbon  
 2. Workbook  
 3. Cell  
 4. Formula bar

Question ID : 630680315445

Option 1 ID : 6306801227499

Option 2 ID : 6306801227497

Option 3 ID : 6306801227500

Option 4 ID : 6306801227498

Status : Answered

Chosen Option : 4

Q.18 Which of the following short cut key is used to print any file in Word documents?

- Ans  1. Ctrl+ V  
 2. Ctrl+P  
 3. Ctrl + X  
 4. Ctrl + C

Question ID : 630680315441

Option 1 ID : 6306801227484

Option 2 ID : 6306801227483

Option 3 ID : 6306801227482

Option 4 ID : 6306801227481

Status : Answered

Chosen Option : 2

Q.19 Computer is an electronic device which gives the result after processing through \_\_\_\_\_device.

- Ans
- 1. C.P.U.
  - 2. Output
  - 3. Input
  - 4. Processing

Question ID : 630680315436  
Option 1 ID : 6306801227464  
Option 2 ID : 6306801227461  
Option 3 ID : 6306801227462  
Option 4 ID : 6306801227463  
Status : Answered  
Chosen Option : 1

Q.20 In which of the following year Jeevan Pramaan – an “Aadhaar-based Digital Life Certificate” for pensioners was launched in India?

- Ans
- 1. 2019
  - 2. 2013
  - 3. 2014
  - 4. 2015

Question ID : 630680315452  
Option 1 ID : 6306801227528  
Option 2 ID : 6306801227526  
Option 3 ID : 6306801227525  
Option 4 ID : 6306801227527  
Status : Answered  
Chosen Option : 4