

DELHI DEVELOPMENT AUTHORITY
RECRUITMENT CELL
VIKAS SADAN, INA, NEW DELHI - 110023
(<https://www.dda.gov.in>)

Advertisement No. 02/2023/Recrt. Cell/Pers./DDA

Participant ID	
Participant Name	
Test Center Name	
Test Date	19/08/2023
Test Time	8:30 AM - 10:30 AM
Subject	Patwari

Section : **General Awareness**

Q.1 Pondicherry was captured by the Dutch in 1693 but was returned to French company by which treaty in 1699?

- Ans 1. Treaty of Amiens
 2. Treaty of Ryswick
 3. Treaty of Paris
 4. Treaty of Versailles

Question ID : **630680296237**

Option 1 ID : **6306801152618**

Option 2 ID : **6306801152616**

Option 3 ID : **6306801152617**

Option 4 ID : **6306801152619**

Status : **Not Answered**

Chosen Option : --

Q.2 Which of the following is a cause of Excess Demand (Inflationary gap) in an economy?

- Ans**
- 1. Deficits in balance of payments
 - 2. Cut in autonomous investment
 - 3. Cut in capital formation
 - 4. Government expenditure > Government revenue

Question ID : 630680296235

Option 1 ID : 6306801152609

Option 2 ID : 6306801152608

Option 3 ID : 6306801152610

Option 4 ID : 6306801152611

Status : Answered

Chosen Option : 4

Q.3 In May 2023, which of the following states became the first state in the country to launch a state robotics framework with a vision to create a sustainable robotics ecosystem?

- Ans**
- 1. Kerala
 - 2. Karnataka
 - 3. Telangana
 - 4. Andhra Pradesh

Question ID : 630680296231

Option 1 ID : 6306801152594

Option 2 ID : 6306801152595

Option 3 ID : 6306801152593

Option 4 ID : 6306801152592

Status : Answered

Chosen Option : 1

Q.4 'Mo Ghara' (My Home) – a credit-linked housing scheme for rural poor with an aim to convert all kutcha houses into pucca ones was introduced in which state in May 2023?

Ans 1. Odisha

2. West Bengal

3. Assam

4. Tripura

Question ID : 630680296234

Option 1 ID : 6306801152606

Option 2 ID : 6306801152604

Option 3 ID : 6306801152605

Option 4 ID : 6306801152607

Status : Answered

Chosen Option : 4

Q.5 Who become the first female NCC cadet to complete mountaineering course in the Himalayan region in May 2023?

Ans 1. Santosh Yadav

2. Malavath Poorna

3. Shalini Singh

4. Premalata Agrawal

Question ID : 630680296230

Option 1 ID : 6306801152590

Option 2 ID : 6306801152589

Option 3 ID : 6306801152591

Option 4 ID : 6306801152588

Status : Answered

Chosen Option : 1

Q.6 According to Census 2011, the gap in literacy rates of males and females is less than 5% points in which of the following states?

- Ans**
- 1. Himachal Pradesh
 - 2. Tamil Nadu
 - 3. Mizoram
 - 4. Maharashtra

Question ID : 630680296244

Option 1 ID : 6306801152647

Option 2 ID : 6306801152645

Option 3 ID : 6306801152644

Option 4 ID : 6306801152646

Status : Not Answered

Chosen Option : --

Q.7 Who is the author of 'All the Lives We Never Lived' (Novel) that won the Sahitya Academy Award 2022 for English language?

- Ans**
- 1. Anuradha Roy
 - 2. Namita Gokhale
 - 3. Arundhati Subramaniam
 - 4. Shashi Tharoor

Question ID : 630680296239

Option 1 ID : 6306801152627

Option 2 ID : 6306801152626

Option 3 ID : 6306801152625

Option 4 ID : 6306801152624

Status : Not Answered

Chosen Option : --

Q.8 The Indian junior men's hockey team won Men's Junior Asia Cup hockey 2023 by defeating which of the following countries?

Ans 1. Pakistan

2. South Korea

3. Thailand

4. Malaysia

Question ID : 630680296229

Option 1 ID : 6306801152584

Option 2 ID : 6306801152586

Option 3 ID : 6306801152587

Option 4 ID : 6306801152585

Status : Answered

Chosen Option : 3

Q.9 Under 'Namo Shetkari Mahasanman Yojana', which got nod from the Maharashtra Cabinet in May 2023, farmers in Maharashtra will get _____ per year as minimum income support.

Ans 1. ₹5000

2. ₹4,500

3. ₹6,000

4. ₹7,500

Question ID : 630680296233

Option 1 ID : 6306801152601

Option 2 ID : 6306801152600

Option 3 ID : 6306801152602

Option 4 ID : 6306801152603

Status : Not Answered

Chosen Option : --

Q.10 Blackbuck is the 'state animal' of which Indian state?

Ans 1. Manipur

2. Andhra Pradesh

3. Arunachal Pradesh

4. Meghalaya

Question ID : 630680296242

Option 1 ID : 6306801152638

Option 2 ID : 6306801152636

Option 3 ID : 6306801152637

Option 4 ID : 6306801152639

Status : Not Answered

Chosen Option : --

Q.11 The purple frog, also known as pignose frog is endemic to which part of India?

Ans 1. Coastal Plains in the east

2. Eastern Ghats

3. Eastern Himalayas

4. Western Ghats

Question ID : 630680296243

Option 1 ID : 6306801152643

Option 2 ID : 6306801152640

Option 3 ID : 6306801152642

Option 4 ID : 6306801152641

Status : Not Answered

Chosen Option : --

Q.12 Which of the following Directive Principles of State Policy is NOT based on Gandhian principles?

- Ans** 1. The State shall endeavour to promote cottage industries on an individual or cooperative basis in rural areas.
2. The State shall make provisions for securing just and humane conditions of work and for maternity relief.
3. The State shall prohibit intoxicating drinks and drugs that are injurious to health.
4. The State shall take steps to organise village panchayats as units of Self Government.

Question ID : 630680296245

Option 1 ID : 6306801152649

Option 2 ID : 6306801152651

Option 3 ID : 6306801152650

Option 4 ID : 6306801152648

Status : Not Answered

Chosen Option : --

Q.13 For which of the following bills, Joint sittings of the Lok Sabha and the Rajya Sabha has NOT been convened so far?

- Ans** 1. Banking Service Commission (Repeal) Bill, 1977
2. Dowry Prohibition Bill, 1959
3. Armed Forces Special Powers Act, 1958
4. Prevention of Terrorism Bill, 2002

Question ID : 630680296247

Option 1 ID : 6306801152657

Option 2 ID : 6306801152656

Option 3 ID : 6306801152659

Option 4 ID : 6306801152658

Status : Not Answered

Chosen Option : --

Q.14 Kajari festival which begins on the day of the shukla navami is related to the farmers and celebrated in the state of _____ at the beginning of the sowing season especially by women.

- Ans
- 1. Odisha
 - 2. Chhattisgarh
 - 3. Jharkhand
 - 4. Bihar

Question ID : 630680296241

Option 1 ID : 6306801152635

Option 2 ID : 6306801152633

Option 3 ID : 6306801152632

Option 4 ID : 6306801152634

Status : Not Answered

Chosen Option : --

Q.15 Who among the following won the Nobel Prize in 1961 for mapping of the pathway of carbon assimilation in photosynthesis?

- Ans
- 1. Melvin Calvin
 - 2. Rudolph A Marcus
 - 3. Andrew Benson
 - 4. James Bassham

Question ID : 630680296248

Option 1 ID : 6306801152660

Option 2 ID : 6306801152663

Option 3 ID : 6306801152662

Option 4 ID : 6306801152661

Status : Not Answered

Chosen Option : --

Q.16 Arrange the following languages in the correct chronological order of being declared as the Classical Languages of India.

- A- Tamil
- B- Malayalam
- C- Telugu
- D- Sanskrit

- Ans
- 1. DABC
 - 2. DACB
 - 3. ADCB
 - 4. ABCD

Question ID : 630680296240

Option 1 ID : 6306801152630

Option 2 ID : 6306801152631

Option 3 ID : 6306801152628

Option 4 ID : 6306801152629

Status : Answered

Chosen Option : 2

Q.17 Researchers from which institute have discovered a new species of single-cell algae, known as diatoms, from the northern Western Ghats in May 2023?

- Ans
- 1. Indira Gandhi Government Medical College & Hospital, Nagpur
 - 2. Agharkar Research Institute (ARI), Pune
 - 3. The Indian Institute of Tropical Meteorology, Pune
 - 4. Tata Institute of Fundamental Research, Mumbai

Question ID : 630680296232

Option 1 ID : 6306801152598

Option 2 ID : 6306801152596

Option 3 ID : 6306801152599

Option 4 ID : 6306801152597

Status : Not Answered

Chosen Option : --

Q.18 In which of the following states, Micro Financing was first introduced by the SEWA Bank, a division of the Self-Employed Women's Association (SEWA), in 1974?

- Ans 1. Gujarat
 2. Odisha
 3. Maharashtra
 4. West Bengal

Question ID : 630680296236
Option 1 ID : 6306801152612
Option 2 ID : 6306801152615
Option 3 ID : 6306801152613
Option 4 ID : 6306801152614
Status : Not Answered
Chosen Option : --

Q.19 'Truth, Love and a Little Malice' is an autobiography of which of the following personalities?

- Ans 1. Sita Ram Goel
 2. Abhinav Bindra
 3. Khushwant Singh
 4. Nirad C Chaudhuri

Question ID : 630680296238
Option 1 ID : 6306801152620
Option 2 ID : 6306801152623
Option 3 ID : 6306801152622
Option 4 ID : 6306801152621
Status : Not Answered
Chosen Option : --

Q.20 'Swaraj Constitution' is attributed to which of the following national leaders?

- Ans 1. B R Ambedker
 2. Moti Lal Nehru
 3. Sardar Vallabh Bhai Patel
 4. Jawahar Lal Nehru

Question ID : 630680296246
Option 1 ID : 6306801152652
Option 2 ID : 6306801152655
Option 3 ID : 6306801152654
Option 4 ID : 6306801152653
Status : Answered
Chosen Option : 1

Section : General Intelligence & Reasoning Ability

Q.1 Four word pairs have been given, out of which three are alike in some manner and one is different. Select the one that is different.

- Ans 1. Soldier : Security
 2. Lecturer : Education
 3. Chef : Restaurant
 4. Doctor : Treatment

Question ID : 630680296262
Option 1 ID : 6306801152716
Option 2 ID : 6306801152719
Option 3 ID : 6306801152718
Option 4 ID : 6306801152717
Status : Answered
Chosen Option : 3

Q.2 2 is added to each even number and 2 is subtracted from each odd number in the given number series, and then all the digits of the newly formed numbers are arranged in descending order. What will be the sum of digits which are second from the left and third from the right in the newly arranged number?
(Left) 4736529 (Right)

Ans 1. 12

2. 11

3. 10

4. 13

Question ID : 630680296256

Option 1 ID : 6306801152694

Option 2 ID : 6306801152693

Option 3 ID : 6306801152692

Option 4 ID : 6306801152695

Status : Answered

Chosen Option : 2

Q.3 Select the number from among the given options that can replace the question mark (?) in the following series.
12, 19, 30, 57, 120, ?

Ans 1. 212

2. 247

3. 258

4. 186

Question ID : 630680296266

Option 1 ID : 6306801152734

Option 2 ID : 6306801152733

Option 3 ID : 6306801152735

Option 4 ID : 6306801152732

Status : Not Answered

Chosen Option : --

Q.4 Select the term from among the given options that can replace the question mark (?) in the following series.

SCRN-7, UATL-17, WYVJ-38, YWXH-81, ?

- Ans
- 1. AUZG-172
 - 2. AVZF-168
 - 3. AUZF-168
 - 4. AUYF-165

Question ID : 630680296255

Option 1 ID : 6306801152690

Option 2 ID : 6306801152691

Option 3 ID : 6306801152689

Option 4 ID : 6306801152688

Status : Not Answered

Chosen Option : --

Q.5 Four letter-cluster pairs have been given, out of which three are alike in some manner and one is different. Select the one that is different.

- Ans
- 1. PRISON : LVSQRV
 - 2. DOCKET : EQFVGM
 - 3. SOCIAL : EQUNCK
 - 4. CASTLE : UCEGNV

Question ID : 630680296263

Option 1 ID : 6306801152722

Option 2 ID : 6306801152723

Option 3 ID : 6306801152720

Option 4 ID : 6306801152721

Status : Not Answered

Chosen Option : --

Q.6 Select the combination of letters that when sequentially placed in the blanks of the given series will complete the series.

N _ R _ DV _ ANT _ ED _ MA _ TRE _ _ MA

- Ans
- 1. TEMRVTDV
 - 2. TENBVNDV
 - 3. TEMRVNDR
 - 4. TEMRVNDV

Question ID : 630680296254

Option 1 ID : 6306801152684

Option 2 ID : 6306801152685

Option 3 ID : 6306801152687

Option 4 ID : 6306801152686

Status : Answered

Chosen Option : 4

Q.7 Select the word-pair that best represents a similar relationship to the one expressed in the pair of words given below.

Vehicle : Truck

- Ans
- 1. Police : Security
 - 2. Ornaments : Beauty
 - 3. Insulin : Doctor
 - 4. Drapery : Curtain

Question ID : 630680296260

Option 1 ID : 6306801152711

Option 2 ID : 6306801152708

Option 3 ID : 6306801152710

Option 4 ID : 6306801152709

Status : Answered

Chosen Option : 3

Q.8 Eight people named P, Q, R, S, T, U, V and W are sitting in a straight line facing the north direction. More than two people are sitting towards the left of S. Q is second to the left of T. V is third to the left of T. W is third to the left of S. S is to the immediate left of V. U is fourth to the right of R. Who is sitting second to the right of P?

Ans 1. S

2. Q

3. V

4. R

Question ID : 630680296249

Option 1 ID : 6306801152665

Option 2 ID : 6306801152667

Option 3 ID : 6306801152666

Option 4 ID : 6306801152664

Status : Answered

Chosen Option : 1

Q.9 If $W < N < L = K > F > R < H$, then which of the following is correct?

Ans 1. $H > L$

2. $N > R$

3. $H > K$

4. $K > W$

Question ID : 630680296252

Option 1 ID : 6306801152676

Option 2 ID : 6306801152679

Option 3 ID : 6306801152678

Option 4 ID : 6306801152677

Status : Answered

Chosen Option : 4

Q.10 In a certain code language, if '&' means 'addition', '#' means 'multiplication', '@' means 'division' and '%' means 'subtraction', then find the value of $27 \% (48 @ 12) \& (76 @ 19) \# (25 \% 19) \& 96 @ 8$.

- Ans
- 1. 63
 - 2. 55
 - 3. 59
 - 4. 66

Question ID : 630680296268

Option 1 ID : 6306801152742

Option 2 ID : 6306801152740

Option 3 ID : 6306801152741

Option 4 ID : 6306801152743

Status : Answered

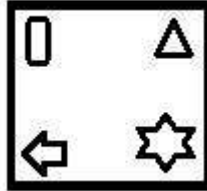
Chosen Option : 1

KD JOB UPDATES

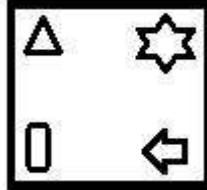
Q.11 Four figures have been given, out of which three are alike in some manner and one is different. Select the one that is different.

Ans

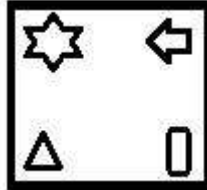
✗ 1.



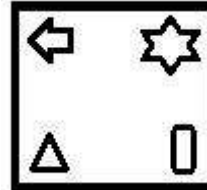
✗ 2.



✗ 3.



✓ 4.



KD JOB UPDATES

Question ID : 630680296265

Option 1 ID : 6306801152729

Option 2 ID : 6306801152728

Option 3 ID : 6306801152730

Option 4 ID : 6306801152731

Status : Not Answered

Chosen Option : --

Q.12 Select the number from among the given options that can replace the question mark (?) in the following series.
51, 74, 103, 134, 171, ?

- Ans**
- 1. 224
 - 2. 252
 - 3. 238
 - 4. 212

Question ID : 630680296267
Option 1 ID : 6306801152737
Option 2 ID : 6306801152739
Option 3 ID : 6306801152738
Option 4 ID : 6306801152736
Status : **Not Answered**
Chosen Option : --

Q.13 Read the given statements and conclusions carefully. Assuming that the information given in the statements is true, even if it appears to be at variance with commonly known facts, decide which of the given conclusions logically follow(s) from the statement(s).

Statements:

All apples are cashews.
Some apples are bananas.
All bananas are figs.

Conclusions:

I. Some figs are cashews.
II. No fig is a cashew.
III. Some apples are figs.

- Ans**
- 1. Both conclusion II and III follow
 - 2. Only conclusion I follows
 - 3. Both conclusion I and III follow
 - 4. Either conclusion I or II follows

Question ID : 630680296251
Option 1 ID : 6306801152673
Option 2 ID : 6306801152672
Option 3 ID : 6306801152674
Option 4 ID : 6306801152675
Status : **Answered**
Chosen Option : 3

Q.14 If $R = T$, $Y > K$, $N < E$, $K < N$, $E < P$, $U > P$ and $T > Y$, then which of the following conclusions is NOT correct?

Ans 1. $E < U$

2. $R > K$

3. $Y > N$

4. $N < U$

Question ID : 630680296253

Option 1 ID : 6306801152683

Option 2 ID : 6306801152681

Option 3 ID : 6306801152680

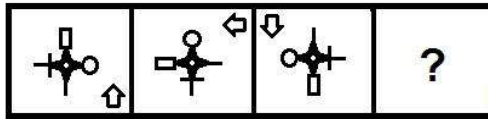
Option 4 ID : 6306801152682

Status : Answered

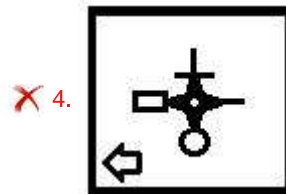
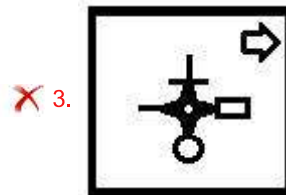
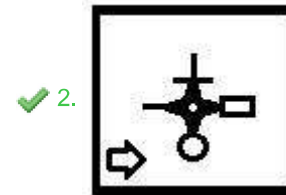
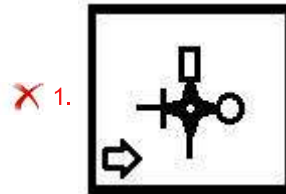
Chosen Option : 3

KD JOB UPDATES

Q.15 Select the figure from among the given options that can replace the question mark (?) in the following series.



Ans



KD JOB UPDATES

Question ID : 630680296264

Option 1 ID : 6306801152724

Option 2 ID : 6306801152725

Option 3 ID : 6306801152726

Option 4 ID : 6306801152727

Status : Answered

Chosen Option : 2

Q.16 Nine friends named A, B, C, D, E, F, G, H and I live on different floors of a building. The ground floor is number 1, the floor above it is number 2 and so on, till the top floor is number 9. F lives on the top floor. G lives immediately below E's floor. Only two people live below C's floor. Only two people live between B and A. Only D lives between A and C. H lives immediately above I's floor. A lives on floor 5. B does not live on floor 2. E lives on some floor above D. On which floor does H live?

- Ans
- 1. Floor 7
 - 2. Floor 8
 - 3. Floor 1
 - 4. Floor 2

Question ID : 630680296250

Option 1 ID : 6306801152671

Option 2 ID : 6306801152670

Option 3 ID : 6306801152668

Option 4 ID : 6306801152669

Status : Answered

Chosen Option : 4

Q.17 Select the option that is related to the fifth letter cluster in the same way as the second letter cluster is related to the first letter cluster and the fourth letter cluster is related to the third letter cluster.

FLOP: OUKL :: CAGE : ZXVT :: WOLF : ?

- Ans
- 1. LDVK
 - 2. KDVO
 - 3. DLOU
 - 4. LDUO

Question ID : 630680296259

Option 1 ID : 6306801152704

Option 2 ID : 6306801152706

Option 3 ID : 6306801152705

Option 4 ID : 6306801152707

Status : Answered

Chosen Option : 4

Q.18 'A & B' means 'A is the brother of B'.
'A + B' means 'A is the daughter of B'.
'A @ B' means 'A is the mother of B'.
'A % B' means 'A is the husband of B'.
'A = B' means 'A is the wife of B'.

If 'M & T + Y % N @ K = R', then which of the following statements is NOT correct?

- Ans
- 1. K is the daughter of Y
 - 2. N is the mother of T
 - 3. M is the son of N
 - 4. R is the son of Y

Question ID : 630680296258

Option 1 ID : 6306801152703

Option 2 ID : 6306801152702

Option 3 ID : 6306801152701

Option 4 ID : 6306801152700

Status : Answered

Chosen Option : 4

Q.19 Four letter-clusters have been given, out of which three are alike in some manner and one is different. Select the one that is different.

- Ans
- 1. RZHPX
 - 2. QYGOU
 - 3. FNVDL
 - 4. CKSAI

Question ID : 630680296261

Option 1 ID : 6306801152715

Option 2 ID : 6306801152714

Option 3 ID : 6306801152713

Option 4 ID : 6306801152712

Status : Not Answered

Chosen Option : --

Q.20 Pointing to the photograph of a boy named Vimal, Janit said, 'he is my wife's brother's father's only son'. How is Vimal related to Janit's father-in-law?

- Ans**
- 1. Brother
 - 2. Father
 - 3. Son
 - 4. Son-in-law

Question ID : 630680296257

Option 1 ID : 6306801152699

Option 2 ID : 6306801152696

Option 3 ID : 6306801152697

Option 4 ID : 6306801152698

Status : Answered

Chosen Option : 3

Section : Arithmetical & Numerical Ability

Q.1 If the length of a certain rectangle is decreased by 6 cm and the width is increased by 4 cm, then a square with the same area as the original rectangle would result. The area of the original rectangle (in cm^2) is:

- Ans**
- 1. 144
 - 2. 125
 - 3. 150
 - 4. 169

Question ID : 630680296287

Option 1 ID : 6306801152817

Option 2 ID : 6306801152816

Option 3 ID : 6306801152818

Option 4 ID : 6306801152819

Status : Not Answered

Chosen Option : --

Q.2 The average of the first nine multiples of 9 is:

- Ans
- 1. 36
 - 2. 63
 - 3. 54
 - 4. 45

Question ID : 630680296272

Option 1 ID : 6306801152756

Option 2 ID : 6306801152758

Option 3 ID : 6306801152757

Option 4 ID : 6306801152759

Status : Answered

Chosen Option : 4

Q.3 If a 9-digit number $486743x2y$ is divisible by 55, then a possible value of $(5x - y)$ is:

- Ans
- 1. 2
 - 2. 1
 - 3. 3
 - 4. 0

Question ID : 630680296270

Option 1 ID : 6306801152750

Option 2 ID : 6306801152749

Option 3 ID : 6306801152751

Option 4 ID : 6306801152748

Status : Answered

Chosen Option : 4

Q.4 A water tank is one-sixth full. Pipes A and B can fill a tank in 6 hours and 9 hours, respectively. If both the pipes are open together, how long will it take to fill the remaining tank completely?

- Ans**
- 1. 4 hours
 - 2. 5 hours
 - 3. 3 hours
 - 4. 6 hours

Question ID : 630680296282

Option 1 ID : 6306801152797

Option 2 ID : 6306801152796

Option 3 ID : 6306801152799

Option 4 ID : 6306801152798

Status : Answered

Chosen Option : 2

Q.5 A and B can do a work in 24 days and 32 days, respectively. They worked for 10 days and C joined with them and completed the remaining work together in 2 days. In how many days C alone can complete the original work?

- Ans**
- 1. 14
 - 2. 16
 - 3. 17
 - 4. 15

Question ID : 630680296281

Option 1 ID : 6306801152792

Option 2 ID : 6306801152794

Option 3 ID : 6306801152795

Option 4 ID : 6306801152793

Status : Not Answered

Chosen Option : --

Q.6 The surface area of a sphere is the same as the curved surface area of a right circular cylinder whose height and diameter of the base are 2.5 m each. The radius of the sphere is (in cm):

Ans ✓ 1. 125

✗ 2. 145

✗ 3. 142

✗ 4. 123

Question ID : 630680296288

Option 1 ID : 6306801152823

Option 2 ID : 6306801152822

Option 3 ID : 6306801152820

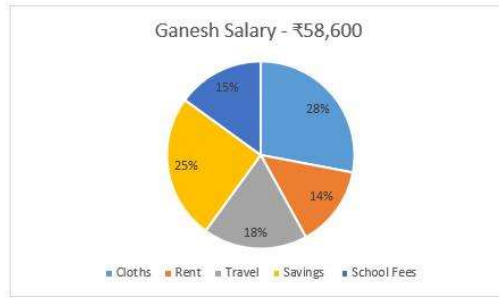
Option 4 ID : 6306801152821

Status : **Not Answered**

Chosen Option : --

KD JOB UPDATES

Q.7 Ganesh monthly salary is ₹58,600. His expenditures and savings is given in the following chart. Study the chart and answer the question.



The average expenditure on rent, travel and school fees of Ganesh (in ₹) is:

- Ans**
- 1. 9,179.33
 - 2. 9,180.67
 - 3. 9,180.33
 - 4. 9,179.67

Question ID : 630680296286

Option 1 ID : 6306801152815

Option 2 ID : 6306801152812

Option 3 ID : 6306801152813

Option 4 ID : 6306801152814

Status : Answered

Chosen Option : 2

Q.8 A and B started a business with investments in the ratio $\frac{2}{3} : \frac{1}{2}$. After 4 months, A increased his capital by 75% and B doubled his capital. What was the share (in ₹ lakhs) of A in the total profit of ₹33 lakhs, after one year?

- Ans**
- 1. 17.2
 - 2. 18
 - 3. 20
 - 4. 16.8

Question ID : 630680296279
Option 1 ID : 6306801152785
Option 2 ID : 6306801152786
Option 3 ID : 6306801152787
Option 4 ID : 6306801152784

Status : **Not Answered**

Chosen Option : --

Q.9 $(0.\overline{23} \div 0.2\overline{5}) \div (0.\overline{8} + 0.\overline{2}) = ?$

- Ans**
- 1. $\frac{9}{10}$
 - 2. $\frac{11}{10}$
 - 3. $\frac{9}{13}$
 - 4. $\frac{9}{11}$

Question ID : 630680296271
Option 1 ID : 6306801152753
Option 2 ID : 6306801152755
Option 3 ID : 6306801152752
Option 4 ID : 6306801152754

Status : **Not Answered**

Chosen Option : --

Q.10 A tradesman marks his goods at 38% above its cost price and allows a discount of 18% for purchase in cash. What profit per cent does he make if goods are sold in cash?

- Ans**
- 1. 12.25%
 - 2. 13.16%
 - 3. 14.12%
 - 4. 15.05%

Question ID : 630680296277

Option 1 ID : 6306801152778

Option 2 ID : 6306801152779

Option 3 ID : 6306801152777

Option 4 ID : 6306801152776

Status : Answered

Chosen Option : 2

KD JOB UPDATE

Q.11 Study the following table and answer the question based on it. The following table gives the percentage of marks obtained by five students in five different subjects in an examination. The numbers in the brackets give the maximum marks in each subject.

Students	Subjects (Maximum Marks)				
	English (100)	Hindi (100)	Mathematics (150)	Physics (120)	Chemistry (120)
A	90	95	92	85	90
B	92	88	96	90	80
C	90	89	90	85	70
D	92	85	94	90	85
E	89	92	98	70	70

The average marks obtained by the student B in the subjects English, Mathematics, Physics and Chemistry is:

- Ans 1. 110
 2. 114
 3. 112
 4. 113

Question ID : 630680296285

Option 1 ID : 6306801152808

Option 2 ID : 6306801152810

Option 3 ID : 6306801152809

Option 4 ID : 6306801152811

Status : **Answered**

Chosen Option : 1

Q.12 An article was sold for ₹483 at a profit of 15%. If it were sold for ₹441, then what would have been the percentage of profit or loss?

- Ans**
- 1. 5% loss
 - 2. 5% profit
 - 3. 8% loss
 - 4. 9% profit

Question ID : 630680296276

Option 1 ID : 6306801152775

Option 2 ID : 6306801152772

Option 3 ID : 6306801152774

Option 4 ID : 6306801152773

Status : **Answered**

Chosen Option : 1

Q.13 A thief is noticed by a policeman at a distance of 960 m. When the policeman starts the chase at 90 km/h, the thief also starts moving at the same time at a speed of 15 m/s, using a motorbike. How far (in m) would the thief have moved before he is caught by the policeman?

- Ans**
- 1. 1440
 - 2. 1340
 - 3. 1380
 - 4. 1450

Question ID : 630680296284

Option 1 ID : 6306801152805

Option 2 ID : 6306801152804

Option 3 ID : 6306801152806

Option 4 ID : 6306801152807

Status : **Not Answered**

Chosen Option : --

Q.14 A number is increased by 20% and then decreased by 15%. The number so obtained is 98 greater than the original number. What was the original number?

- Ans** ✓ 1. 4900
✗ 2. 5000
✗ 3. 5100
✗ 4. 4200

Question ID : 630680296274

Option 1 ID : 6306801152764

Option 2 ID : 6306801152765

Option 3 ID : 6306801152767

Option 4 ID : 6306801152766

Status : Answered

Chosen Option : 1

Q.15 If $a : (b + c) = 7 : 9$ and $c : (a + b) = 9 : 11$, and $a + b + c = 4080$, then what is the value of b ?

- Ans** ✓ 1. 459
✗ 2. 1785
✗ 3. 1888
✗ 4. 549

Question ID : 630680296278

Option 1 ID : 6306801152781

Option 2 ID : 6306801152780

Option 3 ID : 6306801152782

Option 4 ID : 6306801152783

Status : Not Answered

Chosen Option : --

Q.16 $\sqrt[2]{\sqrt{729}} + \sqrt[3]{216}$ is equal to:

- Ans
- 1. 10
 - 2. 12
 - 3. 9
 - 4. 13

Question ID : 630680296269
Option 1 ID : 6306801152744
Option 2 ID : 6306801152746
Option 3 ID : 6306801152745
Option 4 ID : 6306801152747
Status : Answered
Chosen Option : 3

Q.17 In an election between two candidates, 5% of the total voters did not cast their votes and 12% of the votes polled were declared invalid. The winning candidate got 52% of the valid votes and won by a majority of 40128 votes. The number of valid votes polled was:

- Ans
- 1. 969000
 - 2. 1014600
 - 3. 1003200
 - 4. 1140000

Question ID : 630680296275
Option 1 ID : 6306801152768
Option 2 ID : 6306801152769
Option 3 ID : 6306801152770
Option 4 ID : 6306801152771
Status : Not Answered
Chosen Option : --

Q.18 A 360 m long train X passes a pole in 24 seconds and passes completely another train Y, running in the same direction at 42 km/h in $2\frac{1}{2}$ minutes. In how many seconds will train Y cross completely 160 m long train Z running at 48 km/h in the opposite direction?

- Ans** 1. 12
 2. 10
 3. 16
 4. 15

Question ID : 630680296283

Option 1 ID : 6306801152802

Option 2 ID : 6306801152803

Option 3 ID : 6306801152800

Option 4 ID : 6306801152801

Status : Not Answered

Chosen Option : --

Q.19 A sum of ₹15,000 was lent partly at 7.2% p.a. and partly at 9% per annum simple interest. The total interest received after 3 years was ₹3,699. The ratio of the money lent at 7.2% to that lent at 9% is:

- Ans** 1. 13 : 17
 2. 11 : 14
 3. 10 : 13
 4. 15 : 16

Question ID : 630680296280

Option 1 ID : 6306801152791

Option 2 ID : 6306801152789

Option 3 ID : 6306801152788

Option 4 ID : 6306801152790

Status : Not Answered

Chosen Option : --

Q.20 A car travels the first one-third distance with a speed of 50 km/h the second one-third distance with a speed of 65 km/h and the last one-third distance with a speed of 70 km/h. The average speed (in km/h) of the car for the whole journey is: (correct to one decimal place)

- Ans**
- 1. 59.4
 - 2. 60.4
 - 3. 58.9
 - 4. 57.6

Question ID : 630680296273
Option 1 ID : 6306801152762
Option 2 ID : 6306801152761
Option 3 ID : 6306801152760
Option 4 ID : 6306801152763
Status : Not Answered
Chosen Option : --

Section : Hindi (Language & Comprehension)

Q.1 इस मशीन में कुछ है।
वाक्य के रिक्त स्थान के लिए सर्वाधिक उपयुक्त विकल्प का चयन करें।

- Ans**
- 1. खटपट
 - 2. बड़बड़
 - 3. गड़बड़
 - 4. भड़भड़

Question ID : 630680296782
Option 1 ID : 6306801154776
Option 2 ID : 6306801154777
Option 3 ID : 6306801154775
Option 4 ID : 6306801154778
Status : Answered
Chosen Option : 3

Q.2 रोहित को राहुल की ईमानदारी पर है।
वाक्य के रिक्त स्थान के लिए सर्वाधिक उपयुक्त शब्द कौन सा है?

- Ans 1. ग्लानि
 2. संदेह
 3. भ्रम
 4. भ्रांति

Question ID : 630680296780

Option 1 ID : 6306801154770

Option 2 ID : 6306801154769

Option 3 ID : 6306801154767

Option 4 ID : 6306801154768

Status : Answered

Chosen Option : 2

Q.3 'द्वुत' का विलोम शब्द है-

- Ans 1. मंथर
 2. अधीर
 3. तीव्र
 4. क्षिप्र

Question ID : 630680296787

Option 1 ID : 6306801154795

Option 2 ID : 6306801154798

Option 3 ID : 6306801154796

Option 4 ID : 6306801154797

Status : Not Answered

Chosen Option : --

Q.4 सफाई सबको पसंद होनी चाहिए।
इस अर्थ के लिए उपयुक्त लोकोक्ति कौन सी है?

- Ans 1. कुत्ता भी दुम हिलाकर बैठता है
2. कमली ओढ़ने से फकीर नहीं होता
3. कागज की नाव नहीं चलती
4. कोयल होय न उजली सौ मन साबुन लाइ

Question ID : 630680296784

Option 1 ID : 6306801154786

Option 2 ID : 6306801154783

Option 3 ID : 6306801154784

Option 4 ID : 6306801154785

Status : Answered

Chosen Option : 1

Q.5 'रात और संध्या के बीच की बेला' वाक्यांश के लिए सार्थक शब्द है-

- Ans 1. गोधूलि
2. रजनी
3. निशा
4. विभावरी

Question ID : 630680296775

Option 1 ID : 6306801154750

Option 2 ID : 6306801154748

Option 3 ID : 6306801154747

Option 4 ID : 6306801154749

Status : Answered

Chosen Option : 2

Q.6 तुम अपने नियत समय पर आओ।
वाक्य के रेखांकित शब्द को सही विकल्प से प्रतिस्थापित करें।

- Ans 1. अनुमानित
 2. निश्चित
 3. अनिश्चित
 4. संकेतित

Question ID : 630680296777

Option 1 ID : 6306801154757

Option 2 ID : 6306801154755

Option 3 ID : 6306801154756

Option 4 ID : 6306801154758

Status : Answered

Chosen Option : 2

Q.7 कुछ लोग मिथ्या आडंबर करते हैं।
वाक्य के रेखांकित अंश को उचित लोकोक्ति से प्रतिस्थापित करें।

- Ans 1. छोटा मुँह बड़ी बात
 2. छटांक चून चौबारे रसोई
 3. छछूंदर के सिर में चमेली का तेल
 4. छीके कोई नाक कटावे कोई

Question ID : 630680296785

Option 1 ID : 6306801154787

Option 2 ID : 6306801154789

Option 3 ID : 6306801154788

Option 4 ID : 6306801154790

Status : Answered

Chosen Option : 1

Q.8 विलोम की दृष्टि से कौन सा युग्म सुमेलित नहीं है?

- Ans 1. वियोग – विरह
 2. सार्थक – निरर्थक
 3. हर्ष – शोक
 4. साकार – निराकार

Question ID : 630680296788

Option 1 ID : 6306801154802

Option 2 ID : 6306801154799

Option 3 ID : 6306801154800

Option 4 ID : 6306801154801

Status : Answered

Chosen Option : 1

Q.9 'आया हुआ' के लिए एक शब्द है-

- Ans 1. आगत
 2. गत
 3. प्रत्यागत
 4. विगत

Question ID : 630680296776

Option 1 ID : 6306801154753

Option 2 ID : 6306801154751

Option 3 ID : 6306801154754

Option 4 ID : 6306801154752

Status : Answered

Chosen Option : 2

Q.10 मेरी हमारे घर के कामकाज में कुशल है।
वाक्य के रिक्त स्थान के लिए सर्वाधिक उचित विकल्प का चयन करें।

- Ans 1. महिला
 2. पत्नी
 3. नारी
 4. स्त्री

Question ID : 630680296781
Option 1 ID : 6306801154773
Option 2 ID : 6306801154772
Option 3 ID : 6306801154774
Option 4 ID : 6306801154771
Status : Answered
Chosen Option : 2

Q.11 विधवा बेचारी कर रही थी।
वाक्य के रिक्त स्थान के लिए सर्वाधिक उपयुक्त शब्द कौन सा है?

- Ans 1. आलाप
 2. क्लेश
 3. निनाद
 4. विलाप

Question ID : 630680296779
Option 1 ID : 6306801154765
Option 2 ID : 6306801154766
Option 3 ID : 6306801154764
Option 4 ID : 6306801154763
Status : Answered
Chosen Option : 4

Q.12 हमें सही पंथ पर चलना चाहिए।
वाक्य के रेखांकित शब्द को सही विकल्प से प्रतिस्थापित करें।

- Ans
- 1. सिद्धान्त
 - 2. संप्रदाय
 - 3. मार्ग
 - 4. धर्म

Question ID : 630680296778
Option 1 ID : 6306801154762
Option 2 ID : 6306801154761
Option 3 ID : 6306801154760
Option 4 ID : 6306801154759
Status : Answered
Chosen Option : 3

Q.13 'विकार' का अर्थ है-

- Ans
- 1. आवेग
 - 2. प्रकृति
 - 3. दोष
 - 4. गुण

Question ID : 630680296786
Option 1 ID : 6306801154794
Option 2 ID : 6306801154793
Option 3 ID : 6306801154792
Option 4 ID : 6306801154791
Status : Answered
Chosen Option : 3

Q.14 अधिक प्यारा होने के अर्थ में किस मुहावरे का प्रयोग होता है?

- Ans
- 1. आँख का बाल होना
 - 2. पेट का बाल होना
 - 3. नाक का बाल होना
 - 4. कान का बाल होना

Question ID : 630680296783

Option 1 ID : 6306801154781

Option 2 ID : 6306801154782

Option 3 ID : 6306801154780

Option 4 ID : 6306801154779

Status : Answered

Chosen Option : 1

Q.15 पदक्रम की दृष्टि से कौन सा वाक्य शुद्ध है?

- Ans
- 1. दिल्ली बहुत दूर है।
 - 2. बहुत दूर है दिल्ली।
 - 3. दिल्ली दूर बहुत है।
 - 4. दिल्ली दूर है बहुत।

Question ID : 630680296773

Option 1 ID : 6306801154741

Option 2 ID : 6306801154739

Option 3 ID : 6306801154742

Option 4 ID : 6306801154740

Status : Answered

Chosen Option : 1

Q.16 पदक्रम की दृष्टि से कौन सा वाक्य शुद्ध है?

- Ans
- 1. गरीब पर दया करें, हे भाई।
 - 2. हे भाई, दया करें गरीब पर।
 - 3. हे भाई, गरीब पर दया करें।
 - 4. दया करें हे भाई, गरीब पर।

Question ID : 630680296774

Option 1 ID : 6306801154745

Option 2 ID : 6306801154744

Option 3 ID : 6306801154743

Option 4 ID : 6306801154746

Status : Answered

Chosen Option : 3

Comprehension:

भक्ति काव्य को धार्मिक काव्य मानकर उसमें निहित दर्शन, अध्यात्म, रहस्य पर जोर दिया गया है जबकि भक्ति काव्य की विचार पद्धति में ऐसे अनेक सूत्र हैं जो आज की भाषा में प्रगतिशील कहे जायेंगे। यह कहना अतिशयोक्ति नहीं होगी कि भक्ति काव्य में पुरजोर ढंग से कहे गये उसके विचार-सूत्र ऐसे हैं जो आज की आधुनिकता और प्रगतिशीलता से अधिक आधुनिक और प्रगतिशील हैं। उसमें धार्मिक कट्टरता, अन्धविश्वास, रूढ़ियों, पाखण्डों का तीव्र खण्डन है तो सामाजिक वर्ग-भेद के खिलाफ खुलकर आक्रोश व्यक्त किया गया है। आधुनिक विश्व में मार्क्सवाद के प्रसार के साथ श्रम की महत्ता स्थापित हुई। दुनिया में समतामूलक समाज की स्थापना के लिए, वर्ग संघर्ष के खात्मे के लिए, श्रमिक वर्ग को श्रम का वास्तविक मूल्य दिलाने के लिए मार्क्स ने क्रान्ति की अवधारणा प्रस्तुत की। भक्ति काव्य का बड़ा हिस्सा श्रमिक संस्कृति की उपज है। अनेक भक्त कवि श्रमिक हैं, कारीगर हैं।

उपरोक्त गद्यांश के आधार पर निम्नलिखित प्रश्नों के उत्तर दीजिए-

SubQuestion No : 17

Q.17 पारंपरिक अवधारणा में भक्तिकाव्य का स्वरूप है-

- Ans
- 1. धार्मिक
 - 2. आधुनिक
 - 3. प्रगतिशील
 - 4. राजनीतिक

Question ID : 630680296771

Option 1 ID : 6306801154731

Option 2 ID : 6306801154733

Option 3 ID : 6306801154732

Option 4 ID : 6306801154734

Status : Answered

Chosen Option : 1

Comprehension:

भक्ति काव्य को धार्मिक काव्य मानकर उसमें निहित दर्शन, अध्यात्म, रहस्य पर जोर दिया गया है जबकि भक्ति काव्य की विचार पद्धति में ऐसे अनेक सूत्र हैं जो आज की भाषा में प्रगतिशील कहे जायेंगे। यह कहना अतिशयोक्ति नहीं होगी कि भक्ति काव्य में पुरजोर ढंग से कहे गये उसके विचार-सूत्र ऐसे हैं जो आज की आधुनिकता और प्रगतिशीलता से अधिक आधुनिक और प्रगतिशील हैं। उसमें धार्मिक कट्टरता, अन्धविश्वास, रूढ़ियों, पाखण्डों का तीव्र खण्डन है तो सामाजिक वर्ग-भेद के खिलाफ खुलकर आक्रोश व्यक्त किया गया है। आधुनिक विश्व में मार्क्सवाद के प्रसार के साथ श्रम की महत्ता स्थापित हुई। दुनिया में समतामूलक समाज की स्थापना के लिए, वर्ग संघर्ष के खात्मे के लिए, श्रमिक वर्ग को श्रम का वास्तविक मूल्य दिलाने के लिए मार्क्स ने क्रान्ति की अवधारणा प्रस्तुत की। भक्ति काव्य का बड़ा हिस्सा श्रमिक संस्कृति की उपज है। अनेक भक्त कवि श्रमिक हैं, कारीगर हैं। उपरोक्त गद्यांश के आधार पर निम्नलिखित प्रश्नों के उत्तर दीजिए-

SubQuestion No : 18

Q.18 मार्क्स की क्रांति की अवधारणा का लक्ष्य है-

- Ans
- 1. स्वतंत्रतामूलक समाज
 - 2. संपत्तिमूलक समाज
 - 3. धर्ममूलक समाज
 - 4. समतामूलक समाज

Question ID : 630680296770

Option 1 ID : 6306801154728

Option 2 ID : 6306801154727

Option 3 ID : 6306801154730

Option 4 ID : 6306801154729

Status : Answered

Chosen Option : 4

Comprehension:

भक्ति काव्य को धार्मिक काव्य मानकर उसमें निहित दर्शन, अध्यात्म, रहस्य पर जोर दिया गया है जबकि भक्ति काव्य की विचार पद्धति में ऐसे अनेक सूत्र हैं जो आज की भाषा में प्रगतिशील कहे जायेंगे। यह कहना अतिशयोक्ति नहीं होगी कि भक्ति काव्य में पुरजोर ढंग से कहे गये उसके विचार-सूत्र ऐसे हैं जो आज की आधुनिकता और प्रगतिशीलता से अधिक आधुनिक और प्रगतिशील हैं। उसमें धार्मिक कट्टरता, अन्धविश्वास, रूढ़ियों, पाखण्डों का तीव्र खण्डन है तो सामाजिक वर्ग-भेद के खिलाफ खुलकर आक्रोश व्यक्त किया गया है। आधुनिक विश्व में मार्क्सवाद के प्रसार के साथ श्रम की महत्ता स्थापित हुई। दुनिया में समतामूलक समाज की स्थापना के लिए, वर्ग संघर्ष के खत्म के लिए, श्रमिक वर्ग को श्रम का वास्तविक मूल्य दिलाने के लिए मार्क्स ने क्रान्ति की अवधारणा प्रस्तुत की। भक्ति काव्य का बड़ा हिस्सा श्रमिक संस्कृति की उपज है। अनेक भक्त कवि श्रमिक हैं, कारीगर हैं। उपरोक्त गद्यांश के आधार पर निम्नलिखित प्रश्नों के उत्तर दीजिए-

SubQuestion No : 19

Q.19 मार्क्सवाद में किसकी महत्ता स्थापित हुई?

- Ans
- 1. स्वतन्त्रता की
 - 2. संपत्ति की
 - 3. अधिकार की
 - 4. श्रम की

Question ID : 630680296769

Option 1 ID : 6306801154726

Option 2 ID : 6306801154723

Option 3 ID : 6306801154725

Option 4 ID : 6306801154724

Status : Answered

Chosen Option : 4

Comprehension:

भक्ति काव्य को धार्मिक काव्य मानकर उसमें निहित दर्शन, अध्यात्म, रहस्य पर जोर दिया गया है जबकि भक्ति काव्य की विचार पद्धति में ऐसे अनेक सूत्र हैं जो आज की भाषा में प्रगतिशील कहे जायेंगे। यह कहना अतिशयोक्ति नहीं होगी कि भक्ति काव्य में पुरजोर ढंग से कहे गये उसके विचार-सूत्र ऐसे हैं जो आज की आधुनिकता और प्रगतिशीलता से अधिक आधुनिक और प्रगतिशील हैं। उसमें धार्मिक कट्टरता, अन्धविश्वास, रूढ़ियों, पाखण्डों का तीव्र खण्डन है तो सामाजिक वर्ग-भेद के खिलाफ खुलकर आक्रोश व्यक्त किया गया है। आधुनिक विश्व में मार्क्सवाद के प्रसार के साथ श्रम की महत्ता स्थापित हुई। दुनिया में समतामूलक समाज की स्थापना के लिए, वर्ग संघर्ष के खात्मे के लिए, श्रमिक वर्ग को श्रम का वास्तविक मूल्य दिलाने के लिए मार्क्स ने क्रान्ति की अवधारणा प्रस्तुत की। भक्ति काव्य का बड़ा हिस्सा श्रमिक संस्कृति की उपज है। अनेक भक्त कवि श्रमिक हैं, कारीगर हैं। उपरोक्त गद्यांश के आधार पर निम्नलिखित प्रश्नों के उत्तर दीजिए-

SubQuestion No : 20

Q.20 गद्यांश का सर्वाधिक उपयुक्त शीर्षक कौन सा है?

- Ans
- 1. भक्तिकाव्य का दर्शन
 - 2. भक्तिकाव्य की प्रगतिशीलता
 - 3. भक्तिकाव्य की धार्मिकता
 - 4. भक्तिकाव्य का आदर्श

Question ID : 630680296772

Option 1 ID : 6306801154736

Option 2 ID : 6306801154738

Option 3 ID : 6306801154737

Option 4 ID : 6306801154735

Status : Answered

Chosen Option : 3

Section : English (Language & Comprehension)

Q.1 Select the most appropriate option to fill in the blanks.

Mahendra Singh Dhoni embodies _____ great Indian dream of _____ small-town boy who went _____ to become the world's _____ finisher and richest cricketer. Ranchi's boy, Chennai's thala, India's most successful captain, Lieutenant Colonel of the Territorial Army—there has been really no one like him. Dhoni is also said to be an enigma, a contradiction, a complicated recluse who hates to over complicate the game.

- Ans
- 1. the; the; up; best
 - 2. the; the; on; nice
 - 3. a; a; in; good
 - 4. the; a; on; best

Question ID : 630680309406

Option 1 ID : 6306801203777

Option 2 ID : 6306801203780

Option 3 ID : 6306801203778

Option 4 ID : 6306801203779

Status : Answered

Chosen Option : 4

Q.2 Select the most appropriate option to fill in the blanks.

A failed ballistic missile _____ sparked panic in the _____ Korean city of Gangnueng _____ it crashed into the _____ and triggered a fire.

- Ans
- 1. launch; South; for; mud
 - 2. launch; South; since; floor
 - 3. launch; South; after; ground
 - 4. fire; South; once; earth

Question ID : 630680309408

Option 1 ID : 6306801203786

Option 2 ID : 6306801203788

Option 3 ID : 6306801203787

Option 4 ID : 6306801203785

Status : Answered

Chosen Option : 3

Q.3 Select the most appropriate option to fill in the blank.
She remains quiet in class. _____ waters run deep.

- Ans
- 1. Current
 - 2. Cold
 - 3. Warm
 - 4. Still

Question ID : 630680309409

Option 1 ID : 6306801203789

Option 2 ID : 6306801203792

Option 3 ID : 6306801203791

Option 4 ID : 6306801203790

Status : Answered

Chosen Option : 4

Q.4 Select the most appropriate option to fill in the blank.
She has set _____.

- Ans
- 1. some difficult targets for us all
 - 2. his goals in his career
 - 3. the minutes at the meeting
 - 4. a presentation to my colleagues

Question ID : 630680309401

Option 1 ID : 6306801203760

Option 2 ID : 6306801203759

Option 3 ID : 6306801203758

Option 4 ID : 6306801203757

Status : Answered

Chosen Option : 1

Q.5 Select the most appropriate option to fill in the blank.
Neocracy refers to _____.

- Ans** 1. a government by the new or inexperienced
2. a government by known people
3. a government not interested in development
4. a government by experienced people

Question ID : 630680309399

Option 1 ID : 6306801203749

Option 2 ID : 6306801203750

Option 3 ID : 6306801203752

Option 4 ID : 6306801203751

Status : Not Answered

Chosen Option : --

Q.6 Sentences of a paragraph are given below in jumbled order. Arrange the sentences in the correct order to form a meaningful and coherent paragraph.

(1) On behalf of the school association, I want to thank everyone who helped make our annual day a huge success.

(2) I also want to thank our beloved teachers and school staff who provided us timely support and encouragement.

(3) Additionally, I want to express my gratitude to all our audience including students, parents and guardians for cheering our performers and organisers of the show.

(4) First and foremost, I want to thank our amazing participants, who thrilled us with their awesome performances.

(5) We truly thank each one of you, and your support means a lot to us.

- Ans** 1. 51423
2. 14235
3. 14325
4. 54123

Question ID : 630680309405

Option 1 ID : 6306801203775

Option 2 ID : 6306801203773

Option 3 ID : 6306801203774

Option 4 ID : 6306801203776

Status : Answered

Chosen Option : 1

Q.7 Select the most appropriate synonym of the given word.
Flurry

- Ans
- 1. Quick
 - 2. Soothe
 - 3. Surge
 - 4. Fast

Question ID : 630680309413

Option 1 ID : 6306801203806

Option 2 ID : 6306801203808

Option 3 ID : 6306801203807

Option 4 ID : 6306801203805

Status : Answered

Chosen Option : 2

Q.8 Select the most appropriate option that can substitute the underlined segment in the given sentence.

They reached the examination centre on time so as that they will get seated in the examination hall on time.

- Ans
- 1. as they will
 - 2. as they might
 - 3. in order that they would
 - 4. that they might

Question ID : 630680309403

Option 1 ID : 6306801203766

Option 2 ID : 6306801203767

Option 3 ID : 6306801203768

Option 4 ID : 6306801203765

Status : Answered

Chosen Option : 1

Q.9 Select the most appropriate ANTONYM of the given word.
Despondency

- Ans 1. Elation
 2. Gloom
 3. Despair
 4. Happy

Question ID : 630680309410

Option 1 ID : 6306801203793

Option 2 ID : 6306801203795

Option 3 ID : 6306801203794

Option 4 ID : 6306801203796

Status : Answered

Chosen Option : 3

Q.10 Select the most appropriate option to fill in the blanks.

Variation in mountain ecosystems allows humans ____ extract multiple benefits which include food, _____, water, carbon storage, agricultural pasture and _____ cycling. However, these environments remain vulnerable ____ both climate change and human intervention.

- Ans 1. too; water; nutrition; in
 2. to; clothes; nutrient; for
 3. to; building materials; nutrient; to
 4. for; building; nutrition; to

Question ID : 630680309407

Option 1 ID : 6306801203783

Option 2 ID : 6306801203784

Option 3 ID : 6306801203781

Option 4 ID : 6306801203782

Status : Answered

Chosen Option : 2

Q.11 Select the most appropriate option to fill in the blank.
Red-tapism means _____.

- Ans
- 1. marking something as very important
 - 2. adherence to official regulations strictly such that it causes delay and hinders smooth functioning of organisations
 - 3. putting a red tape on something
 - 4. adherence to official regulations strictly

Question ID : 630680309400
Option 1 ID : 6306801203756
Option 2 ID : 6306801203755
Option 3 ID : 6306801203753
Option 4 ID : 6306801203754
Status : Answered
Chosen Option : 2

Q.12 Select the most appropriate synonym of the underlined word.
Experts suggested translocation of the tiger, as it may kill other cattle again if released in the same area.

- Ans
- 1. Transfer of someone
 - 2. A movement
 - 3. Changed look
 - 4. Movement of something from one place to another

Question ID : 630680309414
Option 1 ID : 6306801203811
Option 2 ID : 6306801203809
Option 3 ID : 6306801203810
Option 4 ID : 6306801203812
Status : Answered
Chosen Option : 4

Q.13 Select the most appropriate ANTONYM of the underlined word.
There is a conflation of fact and fiction in his story.

- Ans 1. Amalgamation
 2. Split
 3. Confusion
 4. Alloy

Question ID : 630680309412
Option 1 ID : 6306801203803
Option 2 ID : 6306801203802
Option 3 ID : 6306801203801
Option 4 ID : 6306801203804
Status : Answered
Chosen Option : 1

Q.14 Select the most appropriate meaning of the underlined proverb.

The CEO motivated his team saying that you cannot make omelette without breaking a few eggs. So they must be prepared to work hard.

- Ans 1. Accomplishing any task can be messy.
 2. Be prepared to do tough things in order to create or achieve something.
 3. Be careful while handling problems.
 4. No pain no gain.

Question ID : 630680309404
Option 1 ID : 6306801203769
Option 2 ID : 6306801203770
Option 3 ID : 6306801203772
Option 4 ID : 6306801203771
Status : Answered
Chosen Option : 4

Q.15 Select the most appropriate ANTONYM of the given word.
Waylaid

- Ans** 1. Lay off
 2. Permit
 3. Scupper
 4. Ambush

Question ID : 630680309411
Option 1 ID : 6306801203798
Option 2 ID : 6306801203797
Option 3 ID : 6306801203800
Option 4 ID : 6306801203799
Status : Answered
Chosen Option : 1

Q.16 Select the sentence that INAPPROPRIATELY uses the given word.
Come

- Ans** 1. Come this Friday, and we will have a grand party.
 2. I come yesterday to your office but it was locked.
 3. Come on, you can do it.
 4. Do you wish to come along for a walk?

Question ID : 630680309402
Option 1 ID : 6306801203764
Option 2 ID : 6306801203763
Option 3 ID : 6306801203761
Option 4 ID : 6306801203762
Status : Answered
Chosen Option : 1

Comprehension:

Read the given passage and answer the question that follows.

'AI (Artificial Intelligence) has come to be accepted as a boon for the next century. Everyone is going gaga over its capabilities and potential to make life easier and comfortable. But there is a need to pause and reflect on its flip side as well. Personalised feedback and instant answers might give a magical experience to students using ChatGPT, but where are they heading? They are acquiring the incapability to seek answers on their own, a lack of curiosity to explore, sitting on their couch for someone else to solve their problems. Is it correct? With the world getting more and more automatised, there will be a rise in mental health disorders. Lack of social interactions, true companionship, a shoulder to pour out all sorts of mixed, confused feelings and emotions will create individuals who are like Facebook profiles—beautiful, appealing from outside but broken from inside. This dichotomy between the inner self and outer self will churn complex personalities, which is not healthy and promising for the future of this world. The students need a human touch.

SubQuestion No : 17

Q.17 Identify the tone of the passage given above .

- Ans** 1. Pessimistic
 2. Instructive
 3. Reflective
 4. Optimistic

Question ID : **630680309398**

Option 1 ID : **6306801203747**

Option 2 ID : **6306801203745**

Option 3 ID : **6306801203746**

Option 4 ID : **6306801203748**

Status : **Answered**

Chosen Option : **1**

Comprehension:

Read the given passage and answer the question that follows.

'AI (Artificial Intelligence) has come to be accepted as a boon for the next century. Everyone is going gaga over its capabilities and potential to make life easier and comfortable. But there is a need to pause and reflect on its flip side as well. Personalised feedback and instant answers might give a magical experience to students using ChatGPT, but where are they heading? They are acquiring the incapability to seek answers on their own, a lack of curiosity to explore, sitting on their couch for someone else to solve their problems. Is it correct? With the world getting more and more automatised, there will be a rise in mental health disorders. Lack of social interactions, true companionship, a shoulder to pour out all sorts of mixed, confused feelings and emotions will create individuals who are like Facebook profiles—beautiful, appealing from outside but broken from inside. This dichotomy between the inner self and outer self will churn complex personalities, which is not healthy and promising for the future of this world. The students need a human touch.

SubQuestion No : 18

Q.18 Read the given passage and identify the option that best gives the summary of the passage

- Ans
- 1. AI holds promise for a bright future.
 - 2. The future of world is bleak
 - 3. Personality development in future will be a big challenge.
 - 4. AI holds big promise but it can never replace THE human touch

Question ID : **630680309397**

Option 1 ID : **6306801203741**

Option 2 ID : **6306801203743**

Option 3 ID : **6306801203744**

Option 4 ID : **6306801203742**

Status : **Answered**

Chosen Option : **4**

Comprehension:

Read the given passage and answer the question that follows.

'AI (Artificial Intelligence) has come to be accepted as a boon for the next century. Everyone is going gaga over its capabilities and potential to make life easier and comfortable. But there is a need to pause and reflect on its flip side as well. Personalised feedback and instant answers might give a magical experience to students using ChatGPT, but where are they heading? They are acquiring the incapability to seek answers on their own, a lack of curiosity to explore, sitting on their couch for someone else to solve their problems. Is it correct? With the world getting more and more automatised, there will be a rise in mental health disorders. Lack of social interactions, true companionship, a shoulder to pour out all sorts of mixed, confused feelings and emotions will create individuals who are like Facebook profiles—beautiful, appealing from outside but broken from inside. This dichotomy between the inner self and outer self will churn complex personalities, which is not healthy and promising for the future of this world. The students need a human touch.

SubQuestion No : 19

Q.19 Identify the central theme of the passage.

Ans ✓ 1. AI has to be harnessed very thoughtfully.

✗ 2. Students should be banned from using AI-powered apps such as ChatGPT.

✗ 3. AI in Education is very good.

✗ 4. AI is the hope of the next century.

Question ID : **630680309395**

Option 1 ID : **6306801203734**

Option 2 ID : **6306801203736**

Option 3 ID : **6306801203735**

Option 4 ID : **6306801203733**

Status : **Answered**

Chosen Option : **4**

Comprehension:

Read the given passage and answer the question that follows.

'AI (Artificial Intelligence) has come to be accepted as a boon for the next century. Everyone is going gaga over its capabilities and potential to make life easier and comfortable. But there is a need to pause and reflect on its flip side as well. Personalised feedback and instant answers might give a magical experience to students using ChatGPT, but where are they heading? They are acquiring the incapability to seek answers on their own, a lack of curiosity to explore, sitting on their couch for someone else to solve their problems. Is it correct? With the world getting more and more automatised, there will be a rise in mental health disorders. Lack of social interactions, true companionship, a shoulder to pour out all sorts of mixed, confused feelings and emotions will create individuals who are like Facebook profiles—beautiful, appealing from outside but broken from inside. This dichotomy between the inner self and outer self will churn complex personalities, which is not healthy and promising for the future of this world. The students need a human touch.

SubQuestion No : 20

Q.20 What inference would you draw from the passage given above:

- Ans
- 1. AI will make people inhuman.
 - 2. AI will replace humans
 - 3. AI will make people anti social
 - 4. AI can create mental disorders

Question ID : 630680309396

Option 1 ID : 6306801203737

Option 2 ID : 6306801203739

Option 3 ID : 6306801203738

Option 4 ID : 6306801203740

Status : Answered

Chosen Option : 4

Section : Basic Computer Knowledge

Q.1 Identify whether the given statements are true or false.

i) In MS Excel 365, a worksheet can be renamed with the keyboard shortcut 'Alt + H > O > R', and then by typing the new name for the worksheet.

ii) In MS Excel 365, a worksheet can be renamed by double-clicking the sheet tab and then typing the new name for the worksheet.

Ans ✓ 1. i-True, ii-True

✗ 2. i-False, ii-False

✗ 3. i-False, ii-True

✗ 4. i-True, ii-False

Question ID : 630680296299

Option 1 ID : 6306801152864

Option 2 ID : 6306801152867

Option 3 ID : 6306801152865

Option 4 ID : 6306801152866

Status : Not Answered

Chosen Option : --

Q.2 When we go to File -> Print -> Settings -> Document Info in MS Word 365, we see the following options in the left-hand column of the given table. Match the given options with their respective descriptions.

Options under Document Info	Descriptions
(a) Key assignments	(i) List of styles used in your document
(b) List of markup	(ii) List of your custom shortcut keys
(c) Styles	(iii) Your tracked changes

Ans ✗ 1. (a)-(i), (b)-(ii), (c)-(iii)

✗ 2. (a)-(i), (b)-(iii), (c)-(ii)

✓ 3. (a)-(ii), (b)-(iii), (c)-(i)

✗ 4. (a)-(iii), (b)-(i), (c)-(ii)

Question ID : 630680296297

Option 1 ID : 6306801152857

Option 2 ID : 6306801152858

Option 3 ID : 6306801152856

Option 4 ID : 6306801152859

Status : Not Answered

Chosen Option : --

Q.3 Which of the following is the file extension of MS Word 365 templates?

Ans ✓ 1. dotx

✗ 2. doc

✗ 3. dotm

✗ 4. htm

Question ID : 630680296295

Option 1 ID : 6306801152848

Option 2 ID : 6306801152850

Option 3 ID : 6306801152849

Option 4 ID : 6306801152851

Status : Not Answered

Chosen Option : --

Q.4 Identify whether the given statements are true or false.

i) In MS PowerPoint 365, the 'File' menu includes the options 'Save', 'Save As' and 'Share'.

ii) In MS PowerPoint 365, when the 'Save As' option is clicked, we are always asked for the location where the file needs to be saved.

Ans ✓ 1. i-True, ii-True

✗ 2. i- True, ii-False

✗ 3. i- False, ii-True

✗ 4. i- False, ii-False

Question ID : 630680310728

Option 1 ID : 6306801209041

Option 2 ID : 6306801209043

Option 3 ID : 6306801209042

Option 4 ID : 6306801209044

Status : Not Answered

Chosen Option : --

Q.5 Match the columns.

Mobile Apps/Programs	Descriptions
(a) UMANG	(i) Government-to-Government (G2G) e-Governance initiative of the Karnataka State Government
(b) Mobile Seva AppStore	(ii) This application has seamless integration with core platforms such as DigiLocker, PayGov and Rapid Assessment System (RAS).
(c) KHAJANE	(iii) This mobile application (m-app) store facilitates hosting of suitable applications which can be downloaded and installed on mobile devices, for delivery of public services through mobile devices.

Ans ✓ 1. (a)-(ii), (b)-(iii), (c)-(i)

✗ 2. (a)-(i), (b)-(iii), (c)-(ii)

✗ 3. (a)-(i), (b)-(ii), (c)-(iii)

✗ 4. (a)-(iii), (b)-(i), (c)-(ii)

Question ID : 630680296308

Option 1 ID : 6306801152900

Option 2 ID : 6306801152902

Option 3 ID : 6306801152901

Option 4 ID : 6306801152903

Status : Not Answered

Chosen Option : --

Q.6 Match the formulas in MS Excel 365 with their respective results.

Formulas	Results
(a) =REPT("sies",2)	(i) iessie
(b) =REPLACE("sies",2,2,"sies")	(ii) siessies
(c) =CONCAT("sies","sies","es")	(iii) ssiess
(d) =MID("siessies",2,6)	(iv) siessieses

- Ans
- 1. (a)-(i), (b)-(ii), (c)-(iv), (d)-(iii)
 - 2. (a)-(iii), (b)-(i), (c)-(iv), (d)-(ii)
 - 3. (a)-(ii), (b)-(iii), (c)-(iv), (d)-(i)
 - 4. (a)-(ii), (b)-(i), (c)-(iii), (d)-(iv)

Question ID : 630680296301

Option 1 ID : 6306801152873

Option 2 ID : 6306801152875

Option 3 ID : 6306801152872

Option 4 ID : 6306801152874

Status : Not Answered

Chosen Option : --

Q.7 Which of the following mission mode projects is a pan-India project, monitored and funded by the Department of Justice, Ministry of Law and Justice, Government of India for the District Courts across the country?

- Ans**
- 1. e-Seva
 - 2. e-District
 - 3. e-Office
 - 4. e-Courts

Question ID : 630680296306

Option 1 ID : 6306801152893

Option 2 ID : 6306801152895

Option 3 ID : 6306801152894

Option 4 ID : 6306801152892

Status : **Not Answered**

Chosen Option : --

Q.8 Which MS Word letter-case has been applied over the phrase 'SINGLE COMPUTER'?

- i) Capitalize each word
- ii) Upper case
- iii) Toggle case

- Ans**
- 1. Only i and ii
 - 2. Only ii
 - 3. Only i
 - 4. Only iii

Question ID : 630680296298

Option 1 ID : 6306801152863

Option 2 ID : 6306801152861

Option 3 ID : 6306801152860

Option 4 ID : 6306801152862

Status : **Not Answered**

Chosen Option : --

Q.9 ENIAC is acknowledged as the first successful high-speed EDC. What is the full form of EDC?

- Ans
- 1. Electrical Display Controller
 - 2. Electronic Data Converter
 - 3. Electronic Digital Components
 - 4. Electronic Digital Computer

Question ID : 630680296289

Option 1 ID : 6306801152827

Option 2 ID : 6306801152826





Option 3 ID : 6306801152825

Option 4 ID : 6306801152824

Status : Not Answered

Chosen Option : --

Q.10 Which of the following icons represents 'Conditional Formatting' in MS Excel 365?

- Ans
- 1. 
 - 2. 
 - 3. 
 - 4. 

Question ID : 630680296300

Option 1 ID : 6306801152870

Option 2 ID : 6306801152871

Option 3 ID : 6306801152869

Option 4 ID : 6306801152868

Status : Not Answered

Chosen Option : --

Q.11 Match the columns.

Windows XP commands	Descriptions
(a) Systeminfo	(i) Command to open Control Panel
(b) compmgmt.msc	(ii) Command to display detailed configuration information about a computer and its operating system, including operating system configuration, security information, product ID and hardware properties
(c) diskmgmt.msc	(iii) Command to open Computer Management
(d) control	(iv) Command to open Disk Management

- Ans
- 1. (a)-(iii), (b)-(i), (c)-(iv), (d)-(ii)
 - 2. (a)-(ii), (b)-(iii), (c)-(iv), (d)-(i)
 - 3. (a)-(i), (b)-(ii), (c)-(iv), (d)-(iii)
 - 4. (a)-(ii), (b)-(i), (c)-(iii), (d)-(iv)

Question ID : 630680296294
Option 1 ID : 6306801152847
Option 2 ID : 6306801152844
Option 3 ID : 6306801152845
Option 4 ID : 6306801152846
Status : Not Answered
Chosen Option : --

Q.12 Which of the following is/are NOT the characteristic(s) of a computer?

- i) Storage
- ii) Diligence
- iii) Accuracy
- iv) Tiredness
- v) Speed

Ans ✓ 1. Only iv

✗ 2. Only i, ii and iii

✗ 3. Only ii and iv

✗ 4. Only i, ii and v

Question ID : 630680296290

Option 1 ID : 6306801152828

Option 2 ID : 6306801152829

Option 3 ID : 6306801152831

Option 4 ID : 6306801152830

Status : Answered

Chosen Option : 3

KD JOB UPDATES

Q.13 Match the columns.

Terms in IT Act 2000	Definitions
(a) Digital signature	(i) Cell phones, personal digital assistance or a combination of both or any other device used to communicate, send or transmit any text, video, audio or image
(b) Electronic record	(ii) Authentication of any electronic record by a subscriber by means of an electronic method or procedure in accordance with the provisions of Section 3
(c) Public key	(iii) Data, record or data generated, image or sound stored, received or sent in an electronic form or microfilm or computer-generated microfiche

Ans 1. (a)-(ii), (b)-(iii), (c)-(i)

2. (a)-(iii), (b)-(i), (c)-(ii)

3. (a)-(iii), (b)-(ii), (c)-(i)

4. (a)-(i), (b)-(iii), (c)-(ii)

Question ID : 630680296305

Option 1 ID : 6306801152888

Option 2 ID : 6306801152891

Option 3 ID : 6306801152889

Option 4 ID : 6306801152890

Status : Not Answered

Chosen Option : --

Q.14 Identify whether the given statements are true or false.

i) In Windows XP, the taskbar is primarily used to switch between open windows and applications.

ii) Windows XP provides you with a desktop icon called the Recycle Bin, which stores deleted items.

- Ans 1. i- True, ii-False
 2. i-True, ii-True
 3. i- False, ii-True
 4. i- False, ii-False

Question ID : 630680296293

Option 1 ID : 6306801152842

Option 2 ID : 6306801152840

Option 3 ID : 6306801152841

Option 4 ID : 6306801152843

Status : Not Answered

Chosen Option : --

Q.15 Which of the following are elements of the Windows XP operating system?

i) Desktop

ii) Icons

iii) Menus

iv) Gadgets

- Ans 1. Only ii, iii and iv
 2. Only i, ii and iii
 3. Only i, ii and iv
 4. Only i

Question ID : 630680296292

Option 1 ID : 6306801152839

Option 2 ID : 6306801152837

Option 3 ID : 6306801152838

Option 4 ID : 6306801152836

Status : Answered

Chosen Option : 2

Q.16 Match the columns.

Computer Units	Descriptions
(a) Output Unit	(i) This unit is used for storing data and instructions before and after processing.
(b) Processing Unit	(ii) This unit is used for storing the results.
(c) Storage Unit	(iii) This unit performs all the arithmetic and logical operations.

- Ans
- 1. (a)-(i), (b)-(ii), (c)-(iii)
 - 2. (a)-(i), (b)-(iii), (c)-(ii)
 - 3. (a)-(iii), (b)-(i), (c)-(ii)
 - 4. (a)-(ii), (b)-(iii), (c)-(i)

Question ID : 630680296291

Option 1 ID : 6306801152833

Option 2 ID : 6306801152834

Option 3 ID : 6306801152835

Option 4 ID : 6306801152832

Status : Answered

Chosen Option : 3

Q.17 Which of the following file extensions is used to save an MS PowerPoint 365 macro-enabled presentation?

Ans 1. .pptm

2. .xps

3. .pptx

4. .pps

Question ID : 630680296302

Option 1 ID : 6306801152876

Option 2 ID : 6306801152878

Option 3 ID : 6306801152877

Option 4 ID : 6306801152879

Status : Not Answered

Chosen Option : --

Q.18 Which of the following options are available under 'Compare' within the 'Compare' group in the Review menu, in Microsoft Word 365?

i) Compare two versions of a document

ii) Combine revisions from multiple authors into a single document

iii) Spelling and Grammar

iv) Check Accessibility

v) Track Changes

vi) Show Markup

Ans 1. Only iii, iv, v and vi

2. Only i and ii

3. i, ii, iii, iv, v and vi

4. Only i, ii, iii and v

Question ID : 630680296296

Option 1 ID : 6306801152854

Option 2 ID : 6306801152852

Option 3 ID : 6306801152855

Option 4 ID : 6306801152853

Status : Not Answered

Chosen Option : --

Q.19 Identify whether the given statements are true or false.

i) In MS PowerPoint 365, the keyboard shortcut 'Ctrl + T' is used to open the Font dialog box.

ii) In MS PowerPoint 365, the keyboard shortcut 'Ctrl + M' is used to add a new slide.

iii) In MS PowerPoint 365, the keyboard shortcut 'Ctrl + Q' is used to close a PowerPoint presentation.

- Ans**
- 1. i- True, ii-False, iii-True
 - 2. i- False, ii-True, iii- False
 - 3. i- False, ii-True, iii-True
 - 4. i-True, ii-True, iii-True

Question ID : 630680296303

Option 1 ID : 6306801152882

Option 2 ID : 6306801152883

Option 3 ID : 6306801152881

Option 4 ID : 6306801152880

Status : **Not Answered**

Chosen Option : --

Q.20 Which of the following channels is/are used to deliver services through mobile phones under Mobile Seva Platform?

i) SMS

ii) IVRS

iii) USSD

iv) Post office

- Ans**
- 1. Only ii, iii and iv
 - 2. Only i
 - 3. Only i, ii and iii
 - 4. Only i, ii and iv

Question ID : 630680296307

Option 1 ID : 6306801152899

Option 2 ID : 6306801152896

Option 3 ID : 6306801152897

Option 4 ID : 6306801152898

Status : **Not Answered**

Chosen Option : --