

# Constable GD in CAPFs SSF Rifleman GD in Assam Rifles and Sepoy in NCB Examination 2022

Roll Number	<b>KD Job Updates</b>
Candidate Name	<b>KD Job Updates</b>
Venue Name	Cds Infotech
Exam Date	10/01/2023
Exam Time	9:00 AM - 10:00 AM
Subject	Constable GD Examination 2022

Section : Part-A-General Intelligence and Reasoning

Q.1 Select the correct mirror image of the given figure when the mirror is placed at MN as shown below.

**C L k v 3 8 z**

M ————— N

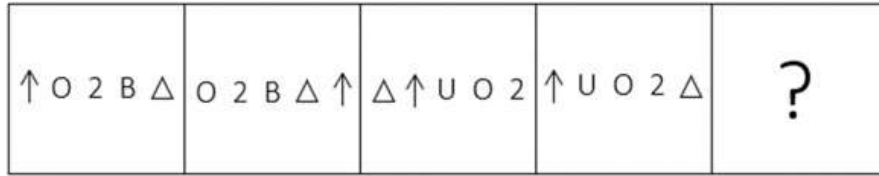
- Ans
- 1. **C 7 K A E 8 5**
  - 2. **C 7 K v 3 8 5**
  - 3. **C 7 K v 3 8 5**
  - 4. **5 8 E v k J C**

Question ID : 26433080804

Status : Answered

Chosen Option : 3

Q.2 Which figure should replace the question mark (?) if the series were to be continued?



Ans

✗ 1. Δ 2 O U ↑

✓ 2. 2 Δ ☆ ↑ U

✗ 3. 2 Δ O ↑ U

✗ 4. Δ 2 F U ↑

Question ID : 26433076637

Status : Answered

Chosen Option : 2

Q.3 Select the option that is related to the fifth letter-cluster in the same way as the second letter-cluster is related to the first letter-cluster and the fourth letter-cluster is related to the third letter-cluster.

YOUR: XPEJ :: TONE: SPLW :: BANK: ?

Ans ✗ 1. XYOP

✗ 2. CBOL

✓ 3. ABLQ

✗ 4. YZMP

Question ID : 26433057494

Status : Answered

Chosen Option : 3

**Q.4** Select the option that is related to the fifth letter-cluster in the same way as the second letter-cluster is related to the first letter-cluster and the fourth letter-cluster is related to the third letter-cluster.

COMFORT : OCFMTRQ :: CONTROL : OCTNLOR :: DIGITAL : ?

- Ans  1. IDIGLAT  
 2. GITALDI  
 3. GIDLATI  
 4. LATIGID

Question ID : 26433069633  
Status : Answered  
Chosen Option : 1

**Q.5** In a certain code language, 'cart light' is coded as 'straw handle', 'plug light' is coded as 'toes handle', and 'cart plug' is coded as 'toes straw'. What is the code word for 'cart'?

- Ans  1. plug  
 2. straw  
 3. handle  
 4. toes

Question ID : 26433079367  
Status : Answered  
Chosen Option : 2

**Q.6** Which of the following numbers will replace the question mark (?) in the given series?  
1, 6, 31, 156, ?, 3906

- Ans  1. 781  
 2. 2125  
 3. 985  
 4. 1225

Question ID : 26433070219  
Status : Answered  
Chosen Option : 1

**Q.7** Which two signs should be interchanged to make the below equation mathematically correct?

$$72 \times 6 + 18 \div 5 - 9 = 93$$

- Ans  1.  $\times$  and  $+$   
 2.  $+$  and  $-$   
 3.  $\div$  and  $-$   
 4.  $\times$  and  $\div$

Question ID : 264330117495  
Status : Answered  
Chosen Option : 4

Q.8 Which of the following numbers will replace the question mark (?) in the given series?  
33, 47, 44, 58, 56, 70, 69, ?

- Ans
- 1. 80
  - 2. 82
  - 3. 84
  - 4. 83

Question ID : 26433067879  
Status : Answered  
Chosen Option : 4

Q.9 Select the set in which the numbers are related in the same way as are the numbers of the following set.

(NOTE : Operations should be performed on the whole numbers, without breaking down the numbers into its constituent digits. E.g. 13 – Operations on 13 such as adding /subtracting/multiplying etc. to 13 can be performed. Breaking down 13 into 1 and 3 and then performing mathematical operations on 1 and 3 is NOT allowed)  
(20, 30, 450)  
(35, 25, 540)

- Ans
- 1. (9, 17, 264)
  - 2. (20, 9, 297)
  - 3. (7, 18, 225)
  - 4. (8, 15, 227)

Question ID : 26433076487  
Status : Answered  
Chosen Option : 3

Q.10 In a certain code language, FORCE is coded as 47, and GREEN is coded as 49. How will FLAVOUR be coded in that language?

- Ans
- 1. 98
  - 2. 92
  - 3. 95
  - 4. 100

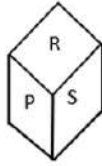
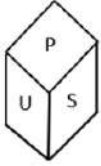
Question ID : 26433067995  
Status : Answered  
Chosen Option : 3

Q.11 Six people are sitting around a circular table facing the centre. Kaya is the immediate neighbour of Jaya and Tara. Sonal is the immediate neighbour of Priya and Swati. Sonal is sitting immediate right of Priya, Tara and Swati are not sitting immediately next to each other. Who is sitting to the immediate left of Priya?

- Ans
- 1. Tara
  - 2. Kaya
  - 3. Jaya
  - 4. Swati

Question ID : 26433069665  
Status : Answered  
Chosen Option : 1

**Q.12** Two different positions of the same dice are shown having alphabets P to U. Find the alphabet on the face opposite the face showing 'U'.



- Ans
- 1. Q
  - 2. S
  - 3. T
  - 4. R

Question ID : 26433085526  
Status : Answered  
Chosen Option : 4

**Q.13** Six colleagues A, B, C, D, E and F are having lunch together on a circular table at equal distance, facing the centre of the circle. D is the immediate neighbour of E and B while C is the immediate neighbour of A and F. If A is to the immediate left of E, then who is on the immediate left of C?

- Ans
- 1. D
  - 2. F
  - 3. B
  - 4. E

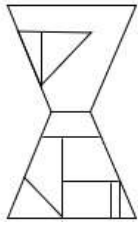
Question ID : 26433079052  
Status : Answered  
Chosen Option : 2

**Q.14** Which of the following terms will replace the question mark (?) in the given series?  
EZFGXH, KTL, QNR, ?

- Ans
- 1. WEY
  - 2. YGY
  - 3. YFZ
  - 4. XFZ

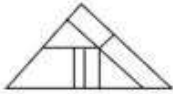
Question ID : 26433068304  
Status : Answered  
Chosen Option : 2

Q.15 Select the option figure which is embedded in the given figure. (Rotation is NOT allowed)

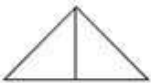


Ans

✗ 1.



✗ 2.



✗ 3.



✓ 4.



Question ID : 26433069337  
Status : Answered  
Chosen Option : 4

Q.16 Which two signs should be interchanged to make the below equation mathematically correct?

$$42 + 16 \div 7 - 36 \times 16 = 76$$

Ans

✗ 1. + and -

✗ 2. ÷ and ×

✓ 3. × and +

✗ 4. ÷ and +

Question ID : 264330114197  
Status : Answered  
Chosen Option : 3

Q.17 Which letter-cluster will replace the question mark (?) to complete the given series?  
ZACF, WXZC, ?, QRTW, NOQT

Ans

✗ 1. XUVZ

✗ 2. XUYZ

✗ 3. VWZC

✓ 4. TUWZ

Question ID : 26433067712  
Status : Answered  
Chosen Option : 4

Q.18 In this question, three statements are given, followed by two conclusions numbered I and II. Assuming the statements to be true, even if they seem to be at variance with commonly known facts, decide which of the conclusions logically follows/follow from the statements.

Statements:

All bottles are bags.

Some bags are pencils.

Some pencils are sharpeners.

Conclusions:

I. Some sharpeners are bottles.

II. Some bottles are pencils.

- Ans  1. Both conclusions I and II follow.
2. Neither conclusion I nor II follows.
3. Only conclusion II follows.
4. Only conclusion I follows.

Question ID : 26433070393

Status : Answered

Chosen Option : 2

Q.19 Which option represents the correct order of the given words as they would appear in the English dictionary?

1 manner

2 manage

3 masculine

4 magic

5 matter

- Ans  1. 1,2,4,3,5
2. 1,4,3,2,5
3. 4,2,1,3,5
4. 4,1,2,5,3

Question ID : 26433069285

Status : Answered

Chosen Option : 3

Q.20 'A + B' means 'B is the father of A'

'A # B' means 'B is the sister of A'

'A @ B' means 'B is the brother of A'

If A @ B # C + D + E, then how is E related to A?

- Ans  1. Son
2. Father
3. Father's father
4. Father's brother

Question ID : 26433068535

Status : Answered

Chosen Option : 3

**Q.1 Jagoi is a major style of which of the following forms of Indian classical dance?**

- Ans
- 1. Sattriya
  - 2. Kathak
  - 3. Manipuri
  - 4. Odissi

Question ID : 26433070839  
Status : Answered  
Chosen Option : 1

**Q.2 Identify a way to reduce the pollution caused due to burning of fossil fuels**

- Ans
- 1. By lowering the temperature of burning
  - 2. By increasing the efficiency of the combustion process
  - 3. By increasing the number of carbon molecules
  - 4. By decreasing the latent heat

Question ID : 26433096234  
Status : Answered  
Chosen Option : 4

**Q.3 Tapan Kumar Pattanayak won the Sangeet natak Akademi Award in which dance form?**

- Ans
- 1. Kuchipudi
  - 2. Chhau
  - 3. Sattriya
  - 4. Odissi

Question ID : 264330115827  
Status : Not Answered  
Chosen Option : --

**Q.4 Who was the first Indian to conquer the English Channel from Dover to Calais in 1958, and also the only man to swim the oceans of the five continents in one calendar year in 1966?**

- Ans
- 1. Mihir Sen
  - 2. Ramanathan Krishnan
  - 3. Ajit Patel
  - 4. Khashaba Jadhav

Question ID : 26433089924  
Status : Answered  
Chosen Option : 2



**Q.5** Rs. 2000 banknote of Mahatma Gandhi (New) Series has \_\_\_\_\_ motif on its back.

- Ans**  1. Rani Ki Vav  
 2. Mangalyaan  
 3. Sun Temple, Konark  
 4. Red Fort

Question ID : 264330115382  
Status : Answered  
Chosen Option : 2

**Q.6** Who commissioned India's first indigenous aircraft carrier INS Vikrant in Kochi in September 2022?

- Ans**  1. Rajnath Singh  
 2. Amit Shah  
 3. Jyotiraditya Scindia  
 4. Narendra Modi

Question ID : 264330114916  
Status : Answered  
Chosen Option : 1

**Q.7** Which latitude line passes through the middle of India influencing the climate of the country?

- Ans**  1. Equator  
 2. Tropic of Capricorn  
 3. Tropic of Cancer  
 4. Antarctic Circle

Question ID : 264330115984  
Status : Answered  
Chosen Option : 2

**Q.8** During the reign of which of the following Mauryan kings, the Kalinga War was fought?

- Ans**  1. Bindusara  
 2. Ashoka  
 3. Chandragupta  
 4. Dasaratha

Question ID : 264330115454  
Status : Answered  
Chosen Option : 2

Q.9 When was the first complete Census conducted in India?

- Ans  1. 1882  
 2. 1880  
 3. 1887  
 4. 1881

Question ID : 264330116036  
Status : Answered  
Chosen Option : 1

Q.10 Who has been appointed as the "State Brand Ambassador" of Uttarakhand government in August 2022?

- Ans  1. Dinesh Karthik  
 2. Rishabh Pant  
 3. Akshay Kumar  
 4. Rohit Shetty

Question ID : 264330114985  
Status : Answered  
Chosen Option : 2

Q.11 The President of India is elected by \_\_\_\_\_.

- Ans  1. Only the Members of State Legislative Assemblies  
 2. Only the elected members of both Houses of Parliament  
 3. Only the members' of Council of States  
 4. the Elected Members of both Houses of Parliament and State Legislative Assemblies.

Question ID : 264330115663  
Status : Answered  
Chosen Option : 4

Q.12 Which of the following is the thanksgiving festival of Maharashtra, where bulls are honoured as they are considered indispensable to farming?

- Ans  1. Makar Sankranti  
 2. Pola Festival  
 3. Gudi Padwa  
 4. Kala Ghoda Arts Festival

Question ID : 264330106205  
Status : Answered  
Chosen Option : 3

Q.13 Original text of the Indian Constitution contained \_\_\_\_\_ articles.

- Ans  1. 376  
 2. 395  
 3. 386  
 4. 440

Question ID : 264330115691  
Status : Answered  
Chosen Option : 3

Q.14 Which of the following was one of the main objectives of the Seventh Five-Year Plan?

- Ans  1. Increase in Infrastructure  
 2. Increase in production of Food Grains  
 3. Elimination of poverty  
 4. Improve the standard of living

Question ID : 264330116126  
Status : Answered  
Chosen Option : 1

Q.15 Moss and Marchantia comes under which of the following?

- Ans  1. Algae  
 2. Gymnosperms  
 3. Pteridophytes  
 4. Bryophytes

Question ID : 264330115210  
Status : Not Answered  
Chosen Option : --

Q.16 Revenue receipts are \_\_\_\_\_ as they do not lead to a claim on the government.

- Ans  1. capital receipts  
 2. reinforceable  
 3. redeemable  
 4. non-redeemable

Question ID : 264330115282  
Status : Answered  
Chosen Option : 4

Q.17 During emergency which fundamental rights cannot be suspended?

- Ans  1. Article 14-15  
 2. Article 20-21  
 3. Article 18-19  
 4. Article 16-17

Question ID : 264330115617  
Status : Answered  
Chosen Option : 1

Q.18 In which among the following states, Arabica coffee grown in India?

- Ans
- 1. Assam
  - 2. Uttarakhand
  - 3. West Bengal
  - 4. Karnataka

Question ID : 264330115529  
Status : Answered  
Chosen Option : 3

Q.19 \_\_\_\_\_ falls under the Ministry of textiles.

- Ans
- 1. Samarth Scheme
  - 2. Ambekar Social Innovation & Incubation Mission
  - 3. MPLADS (Members of Parliament Local Area Development Scheme)
  - 4. Merchandise Export From India Scheme

Question ID : 264330116173  
Status : Answered  
Chosen Option : 1

Q.20 Which State won the Vijay Hazare Trophy in 2017-18?

- Ans
- 1. Uttar Pradesh
  - 2. Kerala
  - 3. Maharashtra
  - 4. Karnataka

Question ID : 264330116255  
Status : Not Answered  
Chosen Option : --

Section : Part-C-Elementary Mathematics

Q.1 A shopkeeper allows a discount of 40% on his articles and still makes a profit of 20%. How much cost price does shopkeeper pay for an article whose marked price is ₹ 2,400?

- Ans
- 1. ₹1,728
  - 2. ₹1,200
  - 3. ₹1,440
  - 4. ₹1,132

Question ID : 26433062686  
Status : Answered  
Chosen Option : 2

**Q.2** A man covers a certain distance by scooter at 64 km/h and he returns to the starting place riding a bicycle at 16 km/h. Find the average speed for the whole journey.

- Ans  1. 25.6 km/h  
 2. 26.5 km/h  
 3. 40 km/h  
 4. 51.2 km/h

Question ID : 26433076200  
Status : Answered  
Chosen Option : 1

**Q.3** 5 women can complete a work in 8 days, while 8 children take 10 days to complete the same work. How many days will 2 women and 4 children take to complete the work?

- Ans  1. 10  
 2. 12  
 3. 40  
 4. 8

Question ID : 26433076384  
Status : Answered  
Chosen Option : 1

**Q.4** The diameter of a right circular cylinder is 14 cm and height is 2 cm. The sum of its curved surface area and the total surface area is: (use  $\pi = \frac{22}{7}$ )

- Ans  1. 484 cm<sup>2</sup>  
 2. 308 cm<sup>2</sup>  
 3. 176 cm<sup>2</sup>  
 4. 968 cm<sup>2</sup>

Question ID : 26433087416  
Status : Answered  
Chosen Option : 1

**Q.5** What is the fourth proportional to  $\sqrt{6}$ ,  $\sqrt{8}$  and  $\sqrt{21}$  ?

- Ans  1.  $3\sqrt{7}$   
 2.  $2\sqrt{7}$   
 3.  $8\sqrt{7}$   
 4.  $5\sqrt{7}$

Question ID : 26433079869  
Status : Answered  
Chosen Option : 2

**Q.6** A can paint a painting in 12 days. B can paint the same in 8 days. C can paint the same in 10 days. Find the (approximate) number of days in which the painting can be painted by A if he is accompanied by both B and C together on alternate days and A starts painting on the first day alone.

- Ans
- 1. 4.4 days
  - 2. 5.4 days
  - 3. 7.2 days
  - 4. 8.5 days

Question ID : 264330116857  
Status : Answered  
Chosen Option : 2

**Q.7** The population of bears in a city has been growing at 3% every year. If the present population of bears in the city is 21,218, what was the population of bears two years ago?

- Ans
- 1. 18000
  - 2. 19000
  - 3. 18500
  - 4. 20000

Question ID : 26433075412  
Status : Answered  
Chosen Option : 4

**Q.8** The income of a person is ₹95,000 and his expenditure is ₹75,000. If his income is increased by 18% and the expenditure by 12%, then what will be the percentage increase in his saving?

- Ans
- 1. 40.6%
  - 2. 40.8%
  - 3. 40.4%
  - 4. 40.5%

Question ID : 26433080161  
Status : Answered  
Chosen Option : 4

**Q.9** Mohan is selling a table at Rs.2,832. If his profit is 18%, then what is the cost price of the table?

- Ans
- 1. Rs.2,480
  - 2. Rs.2,500
  - 3. Rs.2,440
  - 4. Rs.2,400

Question ID : 26433075652  
Status : Answered  
Chosen Option : 4

Q.10 In how much time (in years) would ₹80,000 amount to ₹1,17,128 at 10% per annum rate of interest, compounded yearly?

- Ans  1. 4 years  
 2. 2 years  
 3. 2.5 years  
 4. 3.5 years

Question ID : 26433076229  
Status : Answered  
Chosen Option : 1

Q.11 5 bells start commencing together at 9 AM. They ring at the intervals of 12 seconds, 18 seconds, 24 seconds, 36 seconds and 45 seconds. At what time do the bells ring together again?

- Ans  1. 9:10 AM  
 2. 9:06 AM  
 3. 9:08 AM  
 4. 9:05 AM

Question ID : 264330116633  
Status : Answered  
Chosen Option : 2

Q.12 A spends 45% of his salary on food and donates 5 % of his salary on old age homes. If he spends Rs.28,500 on food and old age homes, then what will be the salary of A?

- Ans  1. Rs. 52,000  
 2. Rs. 57,000  
 3. Rs. 50,000  
 4. Rs. 55,000

Question ID : 26433081016  
Status : Answered  
Chosen Option : 2

Q.13 A cone of radius 9 cm and height 15 cm is melted and made into a cylinder of height 45 cm. The diameter of the cylinder is:

- Ans  1. 3 cm  
 2. 5 cm  
 3. 10 cm  
 4. 6 cm

Question ID : 26433075332  
Status : Answered  
Chosen Option : 4

**Q.14** A person rides bicycle on four different ways to reach the destination. Determine the average speed during this whole journey.

Way	Speed (km/h)	Distance (km)
A	5	20
B	3	15
C	2	10
D	4	24

Ans

✗ 1.  $4.5 \frac{\text{km}}{\text{hr}}$

✓ 2.  $3.45 \frac{\text{km}}{\text{hr}}$

✗ 3.  $5.5 \frac{\text{km}}{\text{hr}}$

✗ 4.  $2.45 \frac{\text{km}}{\text{hr}}$

Question ID : 26433076001

Status : Answered

Chosen Option : 2

**Q.15** Divya bought a car for ₹ 3,50,000 and sold it for ₹ 4,35,000. What is her percentage profit (correct up to one decimal place)?

Ans

✗ 1. 23.3%

✓ 2. 24.3%

✗ 3. 21.5%

✗ 4. 20.7%

Question ID : 26433075543

Status : Answered

Chosen Option : 2



Q.16

If  $(5x - 2y) : (x - 2y) = 9 : 17$ , then find the value of  $\frac{9x}{13y}$ .

Ans

1.  $\frac{72}{421}$

2.  $\frac{151}{1731}$

3.  $\frac{36}{247}$

4.  $\frac{144}{1001}$

Question ID : 26433080030

Status : Answered

Chosen Option : 3

Q.17 A car covered 240 km in 5 h. If it travels with half of its usual speed, then how much more time will be taken to cover the same distance?

Ans  1. 3 h

2. 5 h

3. 10 h

4. 4 h

Question ID : 26433076306

Status : Answered

Chosen Option : 2

Q.18 X bought 40 pencils for a total of Rs 180 and bought 2 dozens of pens for Rs 180. Find the difference between the price of one pen and one pencil.

Ans  1. Rs 3.5

2. Rs 3

3. Rs 2

4. Rs 2.5

Question ID : 264330116689

Status : Answered

Chosen Option : 2

Q.19 How many prime numbers are there between 40 and 50?

Ans  1. 4

2. 5

3. 3

4. 2

Question ID : 26433080282

Status : Answered

Chosen Option : 3

**Q.20** A dealer allowed a discount of 20 percent on marked price of Rs. 72000 on an article and incurred a loss of 10 percent. What discount should he allow on the marked price, so that he gains Rs. 440 on the article?

- Ans  1. 10.5 percent  
 2. 8.5 percent  
 3. 9.5 percent  
 4. 11.5 percent

Question ID : 264330116742  
Status : Answered  
Chosen Option : 1

Section : Part-D-English

**Q.1** Identify the correctly spelt sentence.

- Ans  1. The events arranged or organised in order of time are known as chronoligal order.  
 2. The events arranged or organised in order of time are known as chronological order.  
 3. The events arranged or organised in order of time are known as chronologikal order.  
 4. The events arranged or organised in order of time are known as chronoloigal order.

Question ID : 26433072826  
Status : Answered  
Chosen Option : 2

**Q.2** Select the most appropriate ANTONYM of the given word.

Timid

- Ans  1. Diffident  
 2. Shy  
 3. Bold  
 4. Fearful

Question ID : 26433073571  
Status : Answered  
Chosen Option : 3

**Q.3** Select the most appropriate synonym of the given word.

Blast

- Ans  1. Blow up  
 2. Recall  
 3. Plead  
 4. Share

Question ID : 26433089107  
Status : Answered  
Chosen Option : 1

**Q.4** Select the most appropriate option that can substitute the underlined segment in the given sentence.

I regarded my brother on passing his graduation examination.

- Ans  1. congratulated  
 2. disparaged  
 3. flattered  
 4. kowtowed

Question ID : 26433088163  
Status : Answered  
Chosen Option : 1

**Q.5** Select the most appropriate ANTONYM of the given word.

Liability

- Ans  1. Resource  
 2. Responsibility  
 3. Asset  
 4. Strike

Question ID : 26433072269  
Status : Answered  
Chosen Option : 4

**Q.6** Select the most appropriate homophone to fill in the blank.

In many road accidents people break their bones mainly because their vehicle \_\_\_\_\_ fails.

- Ans  1. brake  
 2. broke  
 3. brow  
 4. bleak

Question ID : 26433088794  
Status : Answered  
Chosen Option : 1

**Q.7** Select the correct word for the blanks in the given sentence.

Sivakashi is famous for its \_\_\_\_\_ box industry, and I am unable to find a \_\_\_\_\_ for my purple dress.

- Ans  1. sweat  
 2. match  
 3. chatter  
 4. bread

Question ID : 26433060538  
Status : Answered  
Chosen Option : 2

Q.8 Select the most appropriate option to fill in the blank.

Truthfully speaking, the victories of peace and harmony have a more \_\_\_\_\_ impact on human civilisation than the so-called victories of war.

- Ans
- 1. Superior
  - 2. Transient
  - 3. Lasting
  - 4. Greater

Question ID : 26433074420  
Status : Answered  
Chosen Option : 4

Q.9 Select the most appropriate option to substitute the underlined segment in the given sentence.

Purchasing furniture at a low cost could not involve abandoning design or quality.

- Ans
- 1. should not entail sacrificing
  - 2. did not provoke compromising
  - 3. have not done regretting
  - 4. cannot force forgetting

Question ID : 26433092914  
Status : Answered  
Chosen Option : 1

Q.10 Select the most appropriate synonym of the given word.

Colloquial

- Ans
- 1. Lexical
  - 2. Conversational
  - 3. Prosodic
  - 4. Linguistic

Question ID : 26433073635  
Status : Answered  
Chosen Option : 1

Q.11 Select the option that expresses the given sentence in future tense form.

There are multiple facilities available for reaching the island.

- Ans
- 1. There will be multiple facilities available for reaching the island.
  - 2. There have been multiple facilities available for reaching the island.
  - 3. There had been multiple facilities available for reaching the island.
  - 4. There were multiple facilities available for reaching the island.

Question ID : 26433089292  
Status : Answered  
Chosen Option : 1

**Q.12 Select the INCORRECTLY spelt word.**

- Ans  1. Maladjusted  
 2. Stakeholder  
 3. Permenent  
 4. Longitude

Question ID : 26433073513  
Status : Answered  
Chosen Option : 3

**Q.13 Select the most appropriate ANTONYM of the given word.**

**Rancid**

- Ans  1. Rotten  
 2. Urgent  
 3. Fresh  
 4. Rough

Question ID : 26433071977  
Status : Answered  
Chosen Option : 3

**Q.14 Select the most appropriate meaning of the given idiom.**

**At your beck and call**

- Ans  1. To have absolute control over someone  
 2. To call someone respectfully  
 3. To have no control over someone  
 4. To call someone and then deny

Question ID : 26433072224  
Status : Answered  
Chosen Option : 1

**Q.15 Select the most appropriate meaning of the given idiom.**

**A night owl**

- Ans  1. Someone who has good eyesight  
 2. Someone who works very hard  
 3. Someone who never works  
 4. A person who prefers to be awake late at night

Question ID : 26433072675  
Status : Answered  
Chosen Option : 4

**Comprehension:**

In the following passage, some words have been deleted. Read the passage carefully and select the most appropriate option to fill in each blank.

The companies in the present era (1) \_\_\_\_\_ priority, during recruitment, to the candidates who have Emotional Intelligence. EI is the ability to understand, analyse and control emotions. Possessing very high EI creates a (2) \_\_\_\_\_ impact on a person's life. People who have EI always maintain emotional stability even in difficult situations. They can be nice even in socially awkward situations. As they are very good at controlling emotions, they make others feel (3) \_\_\_\_\_. It is proven that it will make leaders more effective as they understand the feelings of teammates. It allows one (4) \_\_\_\_\_ impactfully with others. Stress and conflict can be handled so easily. As it allows great empathy towards others, they can be very good at interpersonal relationship. These people strengthen the relationship (5) \_\_\_\_\_ the people with their interaction and coordination both in personal and professional life. Companies are well aware of the benefits with the employees who have EI.

**SubQuestion No : 16**

**Q.16** Select the most appropriate option to fill in blank number 1.

- Ans
- 1. has been giving
  - 2. have been given
  - 3. are giving
  - 4. is giving

Question ID : 26433072166

Status : Answered

Chosen Option : 3

**Comprehension:**

In the following passage, some words have been deleted. Read the passage carefully and select the most appropriate option to fill in each blank.

The companies in the present era (1) \_\_\_\_\_ priority, during recruitment, to the candidates who have Emotional Intelligence. EI is the ability to understand, analyse and control emotions. Possessing very high EI creates a (2) \_\_\_\_\_ impact on a person's life. People who have EI always maintain emotional stability even in difficult situations. They can be nice even in socially awkward situations. As they are very good at controlling emotions, they make others feel (3) \_\_\_\_\_. It is proven that it will make leaders more effective as they understand the feelings of teammates. It allows one (4) \_\_\_\_\_ impactfully with others. Stress and conflict can be handled so easily. As it allows great empathy towards others, they can be very good at interpersonal relationship. These people strengthen the relationship (5) \_\_\_\_\_ the people with their interaction and coordination both in personal and professional life. Companies are well aware of the benefits with the employees who have EI.

**SubQuestion No : 17**

**Q.17** Select the most appropriate option to fill in blank number 2.

- Ans
- 1. creative
  - 2. positive
  - 3. colonial
  - 4. memorable

Question ID : 26433072167

Status : Answered

Chosen Option : 2

**Comprehension:**

In the following passage, some words have been deleted. Read the passage carefully and select the most appropriate option to fill in each blank.

The companies in the present era (1) \_\_\_\_\_ priority, during recruitment, to the candidates who have Emotional Intelligence. EI is the ability to understand, analyse and control emotions. Possessing very high EI creates a (2) \_\_\_\_\_ impact on a person's life. People who have EI always maintain emotional stability even in difficult situations. They can be nice even in socially awkward situations. As they are very good at controlling emotions, they make others feel (3) \_\_\_\_\_. It is proven that it will make leaders more effective as they understand the feelings of teammates. It allows one (4) \_\_\_\_\_ impactfully with others. Stress and conflict can be handled so easily. As it allows great empathy towards others, they can be very good at interpersonal relationship. These people strengthen the relationship (5) \_\_\_\_\_ the people with their interaction and coordination both in personal and professional life. Companies are well aware of the benefits with the employees who have EI.

**SubQuestion No : 18****Q.18 Select the most appropriate option to fill in blank number 3.**

- Ans  1. comfortable  
 2. tolerable  
 3. favourable  
 4. manageable

Question ID : 26433072168  
Status : Answered  
Chosen Option : 1

**Comprehension:**

In the following passage, some words have been deleted. Read the passage carefully and select the most appropriate option to fill in each blank.

The companies in the present era (1) \_\_\_\_\_ priority, during recruitment, to the candidates who have Emotional Intelligence. EI is the ability to understand, analyse and control emotions. Possessing very high EI creates a (2) \_\_\_\_\_ impact on a person's life. People who have EI always maintain emotional stability even in difficult situations. They can be nice even in socially awkward situations. As they are very good at controlling emotions, they make others feel (3) \_\_\_\_\_. It is proven that it will make leaders more effective as they understand the feelings of teammates. It allows one (4) \_\_\_\_\_ impactfully with others. Stress and conflict can be handled so easily. As it allows great empathy towards others, they can be very good at interpersonal relationship. These people strengthen the relationship (5) \_\_\_\_\_ the people with their interaction and coordination both in personal and professional life. Companies are well aware of the benefits with the employees who have EI.

**SubQuestion No : 19****Q.19 Select the most appropriate option to fill in blank number 4.**

- Ans  1. communicate  
 2. to communicating  
 3. to be communicated  
 4. to communicate

Question ID : 26433072169  
Status : Answered  
Chosen Option : 4

**Comprehension:**

In the following passage, some words have been deleted. Read the passage carefully and select the most appropriate option to fill in each blank.

The companies in the present era (1) \_\_\_\_\_ priority, during recruitment, to the candidates who have Emotional Intelligence. EI is the ability to understand, analyse and control emotions. Possessing very high EI creates a (2) \_\_\_\_\_ impact on a person's life. People who have EI always maintain emotional stability even in difficult situations. They can be nice even in socially awkward situations. As they are very good at controlling emotions, they make others feel (3) \_\_\_\_\_. It is proven that it will make leaders more effective as they understand the feelings of teammates. It allows one (4) \_\_\_\_\_ impactfully with others. Stress and conflict can be handled so easily. As it allows great empathy towards others, they can be very good at interpersonal relationship. These people strengthen the relationship (5) \_\_\_\_\_ the people with their interaction and coordination both in personal and professional life. Companies are well aware of the benefits with the employees who have EI.

**SubQuestion No : 20**

**Q.20** Select the most appropriate option to fill in blank number 5.

- Ans  1. in reference with  
 2. between  
 3. along with  
 4. among

Question ID : 26433072170  
Status : Answered  
Chosen Option : 4

## Section : Part-D-Hindi

**Q.1** इस वाक्य के रिक्त स्थान पर रेखांकित शब्द का उपयुक्त विलोम शब्द कौन-सा होगा?

भारत में कहीं अतिवृष्टि से बाढ़ आती है तो कहीं \_\_\_\_\_ से सूखा पड़ता है।

- Ans  1. लघुवृष्टि  
 2. अनावृष्टि  
 3. वृष्टि  
 4. सुवृष्टि

Question ID : 26433066909  
Status : Not Answered  
Chosen Option : --

**Q.2** 'करण खाने बीच मिठाई लाया'

उपरोक्त वाक्य में कारक सम्बन्धी त्रुटि पहचानकर निम्नलिखित में से शुद्ध वाक्य चुनिए।

- Ans  1. करण खाने बाद मिठाई लाया।  
 2. करण खाने की मिठाई लाया।  
 3. करण खाने के लिए मिठाई लाया।  
 4. करण खाने साथ मिठाई लाया।

Question ID : 26433066967  
Status : Not Answered  
Chosen Option : --



Q.3 'सुनैना खाना खा रही है'  
उपरोक्त वाक्य का भाववाच्य में रूपांतरण होगा-

- Ans  1. सुनैना खाना खा रही थी।  
 2. सुनैना से खाना नहीं खाया जाता।  
 3. सुनैना खाना खा रही होगी।  
 4. सुनैना खाना नहीं खा रही है।

Question ID : 26433066980  
Status : Not Answered  
Chosen Option : --

Q.4 दिए गए शब्दों में से उचित शब्द से वाक्य पूर्ण करें --  
वैद्य जी \_\_\_\_\_ देखकर इलाज करते हैं।

- Ans  1. नारी  
 2. नीड़  
 3. नीर  
 4. नाड़ी

Question ID : 26433062909  
Status : Not Answered  
Chosen Option : --

Q.5 'टिप्पस भिड़ाना' मुहावरे का अर्थ होगा-

- Ans  1. सिफारिश करवाना  
 2. अक्ल लगाना  
 3. लोगों को आपस में लड़वाना  
 4. नयी योजना बनाना

Question ID : 26433069947  
Status : Not Answered  
Chosen Option : --

Q.6 निम्नलिखित वाक्य के किस खंड में अशुद्धि है?  
गौतम बुद्ध ने पाली भाषा में उपदेश दिया

- Ans  1. भाषा  
 2. उपदेश  
 3. दिया  
 4. पाली

Question ID : 26433066753  
Status : Not Answered  
Chosen Option : --

Q.7 वाक्य में रेखांकित अंश के लिए उचित मुहावरा दिए गए विकल्पों में से चुनिए-  
तुम किस काम के हो!

- Ans
- 1. कोढ़ में खाज
  - 2. किस मर्ज की दवा
  - 3. कोल्हू का बैल
  - 4. कूप मंडूक

Question ID : 26433062304  
Status : Not Answered  
Chosen Option : --

Q.8 'सरस्वती' के पर्यायवाची शब्द से वाक्य की पूर्ति कीजिए।

प्रातःकाल \_\_\_\_\_ का स्तोत्र पढ़िए।

- Ans
- 1. धात्री
  - 2. कान्ता
  - 3. शारदा
  - 4. उमा

Question ID : 26433079242  
Status : Not Answered  
Chosen Option : --

Q.9 निम्नलिखित वाक्य के किस खंड में त्रुटि है?  
जीवन और साहित्य का घोर संबंध है।

- Ans
- 1. संबंध
  - 2. घोर
  - 3. साहित्य
  - 4. जीवन

Question ID : 26433066756  
Status : Not Answered  
Chosen Option : --

Q.10 'वह व्यक्ति जो विद्यार्थियों को पढ़ाने का कार्य करता है' वाक्यांश के लिए सार्थक शब्द है-

- Ans
- 1. शिक्षार्थी
  - 2. शिक्षक
  - 3. छात्र
  - 4. विद्यार्थी

Question ID : 26433062230  
Status : Not Answered  
Chosen Option : --

Q.11 लकड़ियों का समूह।  
रेखांकित पद 'समूह' के बदले उपयुक्त शब्द का प्रयोग कीजिए।

- Ans
- 1. रेवड़
  - 2. ढेर
  - 3. टुकड़ा
  - 4. गड्ढर

Question ID : 26433062691  
Status : Not Answered  
Chosen Option : --

Q.12 'शरीर का कोई भाग' वाक्यांश के लिए उचित शब्द बताइए -

- Ans
- 1. अवयव
  - 2. अभिन्न
  - 3. कृशांग
  - 4. दृष्टि

Question ID : 26433065908  
Status : Not Answered  
Chosen Option : --

Q.13 निम्न में से किस वाक्य में 'उत्कंठा' के सही पर्यायवाची शब्द का प्रयोग हुआ है?

- Ans
- 1. नव्या में अब कोई लालसा शेष नहीं थी।
  - 2. नेहा श्रेष्ठ गायिका है।
  - 3. रघु में उत्साह की कमी है।
  - 4. लता ने अपनी उदारता का परिचय दिया।

Question ID : 26433067015  
Status : Not Answered  
Chosen Option : --

Q.14 पेड़ बढ़ता गया।

इस वाक्य में प्रयुक्त संयुक्त क्रिया का नाम बताइए।

- Ans
- 1. नित्यताबोधक संयुक्त क्रिया
  - 2. अवकाशबोधक संयुक्त क्रिया
  - 3. अनुमतिबोधक संयुक्त क्रिया
  - 4. समाप्तिबोधक संयुक्त क्रिया

Question ID : 26433063048  
Status : Not Answered  
Chosen Option : --

Q.15 निम्नलिखित वाक्यांश के लिए उपयुक्त सार्थक शब्द है:  
जो कहा न जा सके

- Ans  1. कहना  
 2. कहानी  
 3. अकथ्य  
 4. कथन

Question ID : 26433065756  
Status : Not Answered  
Chosen Option : --

**Comprehension:**

निम्नलिखित गद्यांश में कुछ शब्दों को हटा दिया गया है। दिए गए विकल्पों की सहायता से रिक्त स्थानों की पूर्ति कीजिए। प्रत्येक संख्या के लिए सबसे उपयुक्त विकल्प का चयन करें।

मैत्री भाव सकारात्मक तथा 1. \_\_\_\_\_ वर्ग में गिना जाता है। मित्रता ऐसा उपहार है जो 2. \_\_\_\_\_ को प्राप्त होता है। सच्चा मित्र वही होता है जिसके कारण हमें कभी भी 3. \_\_\_\_\_ ना हो। जब भी हमारी ऐसी कोई आदत होती है जिससे दूसरे को परेशानी होती है तो ऐसी आदत 4. \_\_\_\_\_ में ही भलाई है। मनुष्य तो 5. \_\_\_\_\_ प्राणी है।

SubQuestion No : 16

Q.16 रिक्त स्थान 1 की पूर्ति के लिए सबसे उपयुक्त विकल्प का चयन कीजिए।

- Ans  1. नकारात्मक  
 2. निम्न  
 3. मध्यम  
 4. उच्च

Question ID : 264330110993  
Status : Not Answered  
Chosen Option : --

**Comprehension:**

निम्नलिखित गद्यांश में कुछ शब्दों को हटा दिया गया है। दिए गए विकल्पों की सहायता से रिक्त स्थानों की पूर्ति कीजिए। प्रत्येक संख्या के लिए सबसे उपयुक्त विकल्प का चयन करें।

मैत्री भाव सकारात्मक तथा 1. \_\_\_\_\_ वर्ग में गिना जाता है। मित्रता ऐसा उपहार है जो 2. \_\_\_\_\_ को प्राप्त होता है। सच्चा मित्र वही होता है जिसके कारण हमें कभी भी 3. \_\_\_\_\_ ना हो। जब भी हमारी ऐसी कोई आदत होती है जिससे दूसरे को परेशानी होती है तो ऐसी आदत 4. \_\_\_\_\_ में ही भलाई है। मनुष्य तो 5. \_\_\_\_\_ प्राणी है।

SubQuestion No : 17

Q.17 रिक्त स्थान 2 की पूर्ति के लिए सबसे उपयुक्त विकल्प का चयन कीजिए।

- Ans  1. सबको  
 2. अमीर  
 3. भाग्यशाली  
 4. गरीब

Question ID : 264330110994  
Status : Not Answered  
Chosen Option : --

**Comprehension:**

निम्नलिखित गद्यांश में कुछ शब्दों को हटा दिया गया है। दिए गए विकल्पों की सहायता से रिक्त स्थानों की पूर्ति कीजिए। प्रत्येक संख्या के लिए सबसे उपयुक्त विकल्प का चयन करें।

मैत्री भाव सकारात्मक तथा 1. \_\_\_\_\_ वर्ग में गिना जाता है। मित्रता ऐसा उपहार है जो 2. \_\_\_\_\_ को प्राप्त होता है। सच्चा मित्र वही होता है जिसके कारण हमें कभी भी 3. \_\_\_\_\_ ना हो। जब भी हमारी ऐसी कोई आदत होती है जिससे दूसरे को परेशानी होती है तो ऐसी आदत 4. \_\_\_\_\_ में ही भलाई है। मनुष्य तो 5. \_\_\_\_\_ प्राणी है।

**SubQuestion No : 18**

Q.18 रिक्त स्थान 3 की पूर्ति के लिए सबसे उपयुक्त विकल्प का चयन कीजिए।

- Ans  1. पश्चाताप  
 2. उत्साह  
 3. खुशी  
 4. भलाई

Question ID : 264330110995

Status : Not Answered

Chosen Option : --

**Comprehension:**

निम्नलिखित गद्यांश में कुछ शब्दों को हटा दिया गया है। दिए गए विकल्पों की सहायता से रिक्त स्थानों की पूर्ति कीजिए। प्रत्येक संख्या के लिए सबसे उपयुक्त विकल्प का चयन करें।

मैत्री भाव सकारात्मक तथा 1. \_\_\_\_\_ वर्ग में गिना जाता है। मित्रता ऐसा उपहार है जो 2. \_\_\_\_\_ को प्राप्त होता है। सच्चा मित्र वही होता है जिसके कारण हमें कभी भी 3. \_\_\_\_\_ ना हो। जब भी हमारी ऐसी कोई आदत होती है जिससे दूसरे को परेशानी होती है तो ऐसी आदत 4. \_\_\_\_\_ में ही भलाई है। मनुष्य तो 5. \_\_\_\_\_ प्राणी है।

**SubQuestion No : 19**

Q.19 रिक्त स्थान 4 की पूर्ति के लिए सबसे उपयुक्त विकल्प का चयन कीजिए।

- Ans  1. छोड़ने  
 2. गिनाने  
 3. दिखाने  
 4. अपनाने

Question ID : 264330110996

Status : Not Answered

Chosen Option : --

**Comprehension:**

निम्नलिखित गद्यांश में कुछ शब्दों को हटा दिया गया है। दिए गए विकल्पों की सहायता से रिक्त स्थानों की पूर्ति कीजिए। प्रत्येक संख्या के लिए सबसे उपयुक्त विकल्प का चयन करें।

मैत्री भाव सकारात्मक तथा 1. \_\_\_\_\_ वर्ग में गिना जाता है। मित्रता ऐसा उपहार है जो 2. \_\_\_\_\_ को प्राप्त होता है। सच्चा मित्र वही होता है जिसके कारण हमें कभी भी 3. \_\_\_\_\_ ना हो। जब भी हमारी ऐसी कोई आदत होती है जिससे दूसरे को परेशानी होती है तो ऐसी आदत 4. \_\_\_\_\_ में ही भलाई है। मनुष्य तो 5. \_\_\_\_\_ प्राणी है।

**SubQuestion No : 20**

Q.20 रिक्त स्थान 5 की पूर्ति के लिए सबसे उपयुक्त विकल्प का चयन कीजिए।

Ans  1. सामाजिक

2. दिखावा

3. परेशान

4. भयानक

Question ID : 264330110997

Status : Not Answered

Chosen Option : --

KD Job Updates

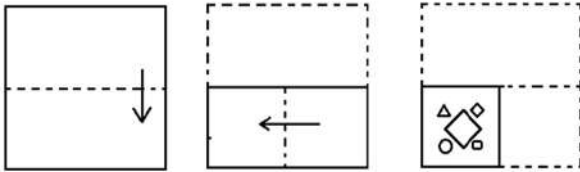
## Constable GD in CAPFs SSF Rifleman GD in Assam Rifles and Sepoy in NCB Examination 2022

Roll Number	<b>KD Job Updates</b>
Candidate Name	<b>KD Job Updates</b>
Venue Name	TCS Gito Bitan
Exam Date	10/01/2023
Exam Time	11:45 AM - 12:45 PM
Subject	Constable GD Examination 2022

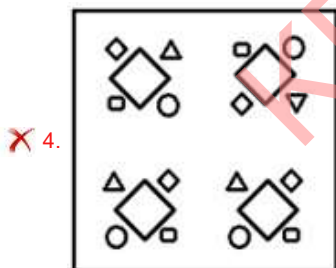
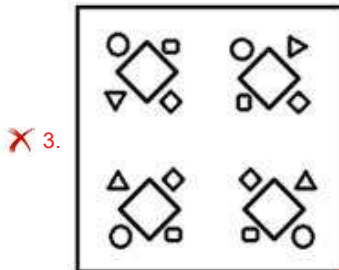
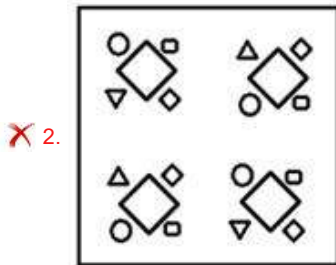
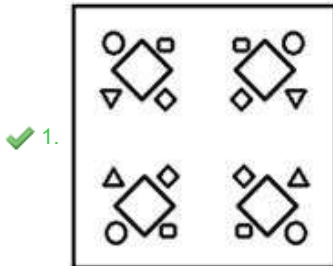
Section : **Part-A-General Intelligence and Reasoning**

**KD Job Updates**

**Q.1** The sequence of folding a piece of paper and the manner in which the folded paper has been cut is shown below. Select the figure which would most closely resemble the unfolded form of the paper.



Ans



Question ID : 26433087095  
 Status : Answered  
 Chosen Option : 1



Q.2 Six girls D, K, M, P, R and S are sitting around a circular table, facing the centre. S is sitting third to the left of R. P is sitting to the immediate right of R and to the immediate left of D. M is sitting to the immediate left of R. K is sitting to the immediate right of S and to the immediate left of M. Who is the immediate neighbour of K and D?

- Ans
- 1. R
  - 2. P
  - 3. M
  - 4. S

Question ID : 26433080472  
Status : Answered  
Chosen Option : 4

Q.3 Which two signs should be interchanged to make the below equation mathematically correct?

$$42 + 12 \div 24 \times 84 - 14 = 91$$

- Ans
- 1. + and ×
  - 2. ÷ and -
  - 3. - and +
  - 4. × and ÷

Question ID : 264330117505  
Status : Answered  
Chosen Option : 1

Q.4 Select the option that is related to the third word in the same way as the second word is related to the first word (The words must be considered as meaningful English words and must not be related to each other based on the number of letters/consonants/vowels in the word).  
Pediatrician : Children :: Dermatologist : ?

- Ans
- 1. Feet
  - 2. Bones
  - 3. Plant
  - 4. Skin

Question ID : 26433078823  
Status : Answered  
Chosen Option : 4

Q.5 Which option represents the correct order of the given words as they would appear in the English dictionary?

- 1 lonely
- 2 longitude
- 3 lovely
- 4 lounge
- 5 locker

- Ans
- 1. 5,1,2,3,4
  - 2. 5,2,1,3,4
  - 3. 5,1,2,4,3
  - 4. 5,4,3,1,2

Question ID : 26433069317  
Status : Answered  
Chosen Option : 3

Q.6 Which letter-cluster will replace the question mark (?) to complete the given series?  
UERB, RHOE, ?, LNIK, IQFN

- Ans
- 1. OKMH
  - 2. OKNI
  - 3. OKLH
  - 4. OLMH

Question ID : 26433068574  
Status : Answered  
Chosen Option : 3

Q.7 Select the set in which the numbers are related in the same way as are the numbers of the following sets.

(NOTE : Operations should be performed on the whole numbers, without breaking down the numbers into its constituent digits. E.g. 13 – Operations on 13 such as adding/subtracting/multiplying etc. to 13 can be performed. Breaking down 13 into 1 and 3 and then performing mathematical operations on 1 and 3 is not allowed)  
(20, 90, 10)  
(25, 135, 10)

- Ans
- 1. (18, 72, 10)
  - 2. (19, 80, 15)
  - 3. (22, 150, 7)
  - 4. (30, 169, 12)

Question ID : 26433076546  
Status : Answered  
Chosen Option : 1

Q.8 Which of the following interchange of numbers (not digits) would make the given equation correct?

$$8 \times 15 \div 3 + 14 - 4 = 26$$

- Ans
- 1. 15, 26
  - 2. 4, 8
  - 3. 14, 15
  - 4. 3, 4

Question ID : 26433087045  
Status : Answered  
Chosen Option : 2

Q.9 A @ B means 'A is the husband of B'.  
A & B means 'A is the mother of B'.  
A # B means 'A is the daughter of B'.  
A % B means 'A is the sister of B'.  
If G % V @ K & P and G # S % M, then how is S related to P?

- Ans
- 1. Father's mother
  - 2. Mother-in-law
  - 3. Son's son
  - 4. Father-in-law

Question ID : 26433069614  
Status : Answered  
Chosen Option : 1

**Q.10** Which of the following numbers will replace the question mark (?) in the given series?  
7, 50, 351, 2458, ?

- Ans  1. 17207  
 2. 18000  
 3. 13582  
 4. 15265

Question ID : 26433082002  
Status : Answered  
Chosen Option : 1

**Q.11** Which of the following terms will replace the question mark (?) in the given series?  
DBA, JHG, PNM, ?

- Ans  1. VTU  
 2. VTQ  
 3. VTS  
 4. KMV

Question ID : 26433068631  
Status : Answered  
Chosen Option : 3

**Q.12** Three Statements are given followed by Three conclusions numbered I, II and III.  
Assuming the statements to be true, even if they seem to be at variance with commonly known facts, decide which of the conclusions logically follow(s) from the statements.

Statements:

Some cabbages are rocks.

All rocks are wheels.

No wheel is a scissor.

Conclusions:

I. All cabbages are wheels.

II. Some rocks are wheels.

III. Some wheels are not scissors.

- Ans  1. Both conclusions I and II follow.  
 2. Both conclusions I and III follow.  
 3. Both conclusions II and III follow.  
 4. All conclusions follow.

Question ID : 26433081792  
Status : Answered  
Chosen Option : 3

**Q.13** Eight people are sitting in two parallel rows with 4 people each in such a way that there is equal distance between adjacent persons and they are facing each other. In row I – L, M, N and O are seated and all of them are facing south. In row II – P, Q, R and S are seated and all of them are facing north. N sits next to the person at the extreme right end of their row and is facing R. S sits at the extreme left end of their row. Q sits to the immediate right of R and is facing L. O sits at the extreme left end of their row. Who sits at the extreme right end of the row of people facing South?

- Ans
- 1. N
  - 2. M
  - 3. L
  - 4. O

Question ID : 26433068745  
 Status : Answered  
 Chosen Option : 2

**Q.14** Select the correct mirror image of the given figure when the mirror is placed at MN as shown below.



- Ans
- 1. 9 d b 7 n o m 4 e
  - 2. 9 d b 7 m o n 4 e
  - 3. e d b 7 m o n 4 9
  - 4. 9 b d 7 m o n 4 e

Question ID : 26433082331  
 Status : Answered  
 Chosen Option : 2

**Q.15** In a certain code language, 'MONTH' is written as '141213719' and 'YEAR' is written as '222269'. How will 'WEEK' be written in that language?

- Ans
- 1. 1444424
  - 2. 2444416
  - 3. 4222261
  - 4. 4222216

Question ID : 26433068228  
 Status : Answered  
 Chosen Option : 4

Q.16 In a certain code language, 'BUYER' is written as 'CSZCS' and 'CHILD' is written as 'DFJJE'. How will 'DEATH' be written in that language?

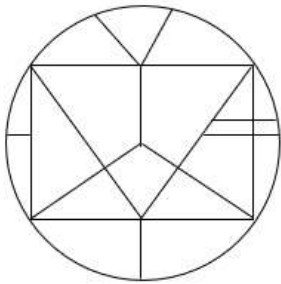
- Ans
- 1. GFCRJ
  - 2. EBCUJ
  - 3. FFBUI
  - 4. ECBRI

Question ID : 26433082558

Status : Answered

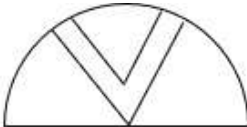
Chosen Option : 4

Q.17 Select the option figure which is embedded in the given figure. (Rotation is NOT allowed)

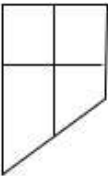


Ans

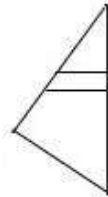
1.



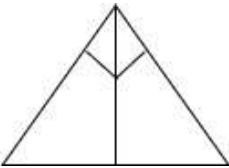
2.



3.



4.

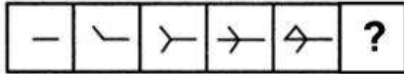


Question ID : 26433069349

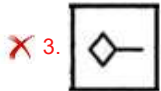
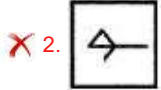
Status : Answered

Chosen Option : 3

Q.18 Select the figure from among the given options that can replace the question mark (?) in the following series.



Ans



Question ID : 26433080494

Status : Answered

Chosen Option : 4

Q.19 Select the option that is related to the fifth letter-cluster in the same way as the second letter-cluster is related to the first letter-cluster and the fourth letter-cluster is related to the third letter-cluster.

UCE : FEX :: PGS : TIS :: HKR : ?

Ans  1. SNK

2. SMJ

3. SMK

4. RKH

Question ID : 26433057745

Status : Answered

Chosen Option : 3

Q.20 Which of the following numbers will replace the question mark (?) in the given series?  
7, 17, ?, 137, 407, 1217

Ans  1. 57

2. 34

3. 51

4. 47

Question ID : 26433068096

Status : Answered

Chosen Option : 4

**Q.1 Sadanam P.V Balakrishnan won the Sangeet Natak Akademi Award in which dance form?**

- Ans**
- 1. Lavani
  - 2. Kathakali
  - 3. Bharatnatyam
  - 4. Kuchipudi

Question ID : **264330115844**  
Status : **Not Answered**  
Chosen Option : --

**Q.2 Who among the following was the first Indian to be recruited in Indian Civil Service in British India?**

- Ans**
- 1. Satyendranath Tagore
  - 2. Rahimtulla M Sayani
  - 3. Rabindranath Tagore
  - 4. Surendra Nath Banerjee

Question ID : **26433090582**  
Status : **Not Answered**  
Chosen Option : --

**Q.3 In badminton each game consist of how many points?**

- Ans**
- 1. 15
  - 2. 21
  - 3. 11
  - 4. 20

Question ID : **264330115928**  
Status : **Not Answered**  
Chosen Option : --

**Q.4 Who was the first flag bearer for India in the Olympics?**

- Ans**
- 1. Purma Banerjee
  - 2. Dhyan Chand
  - 3. Lal Shah Bokhari
  - 4. Zafar Iqbal

Question ID : **264330116258**  
Status : **Not Answered**  
Chosen Option : --

Q.5 Rs. 50 banknote of Mahatma Gandhi (New) series has base colour of \_\_\_\_\_.

- Ans  1. chocolate brown  
 2. stone grey  
 3. fluorescent blue  
 4. lavender

Question ID : 264330115292  
Status : Not Answered  
Chosen Option : --

Q.6 Which of the following is a classical dance form from Andhra Pradesh?

- Ans  1. Bharatanatyam  
 2. Mohiniyattam  
 3. Kuchipudi  
 4. Manipuri

Question ID : 26433074069  
Status : Not Attempted and Marked For Review  
Chosen Option : --

Q.7 Identify a redox reaction.

- Ans  1.  
 $2\text{Pb}(\text{NO}_3)_2(\text{s}) \xrightarrow{\text{Heat}} 2\text{PbO}(\text{s}) + 4\text{NO}_2(\text{g}) + \text{O}_2(\text{g})$   
 2.  $\text{CaCO}_3(\text{s}) \xrightarrow{\text{Heat}} \text{CaO}(\text{s}) + \text{CO}_2(\text{g})$   
 3.  $\text{MnO}_2 + 4\text{HCl} \rightarrow \text{MnCl}_2 + 2\text{H}_2\text{O} + \text{Cl}_2$   
 4.  $\text{Pb}(\text{s}) + \text{CuCl}_2(\text{aq}) \rightarrow \text{PbCl}_2(\text{aq}) + \text{Cu}(\text{s})$

Question ID : 26433091479  
Status : Not Answered  
Chosen Option : --

Q.8 Maha Shivratri is celebrated in the honour of the Hindu deity, Lord Shiva in the Hindu month of \_\_\_\_\_.

- Ans  1. Kartika  
 2. Chaitra  
 3. Phalguna  
 4. Vaishakha

Question ID : 264330115124  
Status : Not Answered  
Chosen Option : --



Q.9 The plan between fifth five year plan and sixth five year plan is known as \_\_\_\_\_.

- Ans
- 1. Forward
  - 2. Equality
  - 3. Rolling
  - 4. Integrated

Question ID : 264330116139  
Status : Answered  
Chosen Option : 3

Q.10 According to Xuan Zang, the \_\_\_\_\_ of Nalanda Buddhist monastery asks new entrants difficult questions which were very difficult to answer

- Ans
- 1. chief of monastery
  - 2. gatekeeper
  - 3. youngest monk
  - 4. oldest monk

Question ID : 26433085220  
Status : Not Answered  
Chosen Option : --

Q.11 As on October 2022, who is the General Secretary of the Communist Party of India ?

- Ans
- 1. Sitaram Yechury
  - 2. D. Raja
  - 3. Indrajit Gupta
  - 4. Binoy Viswam

Question ID : 264330114995  
Status : Not Answered  
Chosen Option : --

Q.12 Skill India Mission's Governing Council is chaired by the \_\_\_\_\_.

- Ans
- 1. Chief Minister
  - 2. President
  - 3. Prime Minister
  - 4. Home Minister

Question ID : 264330116190  
Status : Not Answered  
Chosen Option : --

Q.13 The contribution made by each sector of the economy into GDP is called \_\_\_\_\_.

- Ans
- 1. structural composition
  - 2. nominal composition
  - 3. real GDP
  - 4. real composition

Question ID : 26433082165  
Status : Not Answered  
Chosen Option : --

Q.14 In Nomadic herding, herdsmen move from place to place with their animals for \_\_\_\_\_ and \_\_\_\_\_ along defined routes.

- Ans
- 1. money and water
  - 2. shelter and money
  - 3. fodder and water
  - 4. shelter and fodder

Question ID : 264330115539  
Status : Not Answered  
Chosen Option : --

Q.15 Who among the following was elected as Member of Rajya Sabha from Tripura, India in September 2022?

- Ans
- 1. Arun Singh
  - 2. Miriam Rengma
  - 3. Radha Mohan Das
  - 4. Biplab Kumar Deb

Question ID : 264330114948  
Status : Not Answered  
Chosen Option : --

Q.16 Which article of the Indian Constitution deals with the 'protection of life and personal liberty'?

- Ans
- 1. Article 19
  - 2. Article 21
  - 3. Article 20
  - 4. Article 22

Question ID : 26433089906  
Status : Answered  
Chosen Option : 2

Q.17 Which of the following case is NOT a criminal law case?

- Ans
- 1. Murder
  - 2. Harassment for dowry
  - 3. Theft
  - 4. Divorce case

Question ID : 26433089183  
Status : Answered  
Chosen Option : 4

Q.18 Name the state which has the highest female literacy rate in India as per census 2011.

- Ans  1. Mizoram  
 2. Kerala  
 3. Karnataka  
 4. Maharashtra

Question ID : 264330116053  
Status : Not Answered  
Chosen Option : --

Q.19 In human body, the food passes through a continuous canal which begins at \_\_\_\_\_ and ends at anus.

- Ans  1. stomach  
 2. buccal cavity  
 3. food pipe  
 4. rectum

Question ID : 264330115227  
Status : Answered  
Chosen Option : 1

Q.20 Tamil Nadu coast gets a large portion of its rain during \_\_\_\_\_ and \_\_\_\_\_.

- Ans  1. April and May  
 2. October and November  
 3. May and June  
 4. August and September

Question ID : 26433087879  
Status : Not Answered  
Chosen Option : --

Section : Part-C-Elementary Mathematics

Q.1 A and B can complete a work separately in 10 days and 15 days, respectively. B alone work for 3 days and then he left the work. In how many days will A finish the remaining work?

- Ans  1. 6  
 2. 9  
 3. 8  
 4. 7

Question ID : 26433081081  
Status : Answered  
Chosen Option : 3

**Q.2** Find the product of the numbers whose HCF and LCM are 8 and 40 respectively.

- Ans  1. 240  
 2. 300  
 3. 320  
 4. 360

Question ID : 264330116665  
Status : Answered  
Chosen Option : 3

**Q.3** The difference between compound interest and simple interest is ₹228 for a certain sum of money at 8% per annum for  $1\frac{1}{2}$  years, when compound interest is compounded half-yearly and simple interest is computed yearly. What is the sum?

- Ans  1. ₹46,900  
 2. ₹46,531  
 3. ₹47,000  
 4. ₹46,875

Question ID : 26433090258  
Status : Not Answered  
Chosen Option : --

**Q.4** John borrowed some amount of money from a bank at the rate of 10% per annum on compound interest for which interest is compounded annually. If he repaid his loan by paying ₹21,961.50 at the end of 4 years, what is the amount he borrowed?

- Ans  1. ₹17,000  
 2. ₹15,000  
 3. ₹16,000  
 4. ₹14,000

Question ID : 26433071233  
Status : Not Answered  
Chosen Option : --

**Q.5** A bus travels from station P to station Q at a speed of 70 km/h, and from station Q to station P at a speed of 90 km/h. What is the average speed of the bus during the entire journey?

- Ans  1. 75.78 km/h  
 2. 78.75 km/h  
 3. 80.25 km/h  
 4. 82.35 km/h

Question ID : 26433080375  
Status : Answered  
Chosen Option : 2

Q.6 Sonal and Arjun together can finish a piece of work in 57 days, Arjun and Rohan in 38 days, and Rohan and Sonal in 38 days, then Sonal, Arjun, and Rohan together can finish the same work in how many days?

- Ans
- 1. 31.5 days
  - 2. 28.5 days
  - 3. 26.5 days
  - 4. 24.5 days

Question ID : 264330116874  
Status : Answered  
Chosen Option : 2

Q.7 On selling a table fan at Rs.2,827.06, the value of gain is 14% more than the value of loss incurred on selling it at Rs.2,230. In order to gain 14%, the selling price will be:

- Ans
- 1. Rs.3,045
  - 2. Rs.2,890
  - 3. Rs.2,860.26
  - 4. Rs.2,844.50

Question ID : 26433074923  
Status : Not Answered  
Chosen Option : --

Q.8 The ratio between the fourth proportional of 7, 5 and 3 to the third proportional of 7 and 13 is:

- Ans
- 1. 75 : 448
  - 2. 15 : 169
  - 3. 21 : 25
  - 4. 25 : 21

Question ID : 26433079943  
Status : Answered  
Chosen Option : 2

Q.9 A cylindrical tank has a capacity of  $5632 \text{ m}^3$ . If the diameter of its base is 16 m, find its depth.

- Ans
- 1. 28 m
  - 2. 32 m
  - 3. 30 m
  - 4. 34 m

Question ID : 26433079807  
Status : Answered  
Chosen Option : 1

Q.10 A shopkeeper sells goods at a profit of 12% and uses a weight which is 15% less than the original weight. Find his total percentage gain. (Correct to 2 decimal places)

- Ans  1. 31.76%  
 2. 30.24%  
 3. 28.75%  
 4. 25.80%

Question ID : 26433080164  
Status : Answered  
Chosen Option : 1

Q.11 If  $A : B = 5 : 6$  and  $B : C = 6 : 7$ , then  $(A + B) : (B + C) : (C + A)$  is:

- Ans  1. 12 : 13 : 11  
 2. 11 : 13 : 12  
 3. 11 : 12 : 13  
 4. 13 : 11 : 12

Question ID : 26433074990  
Status : Answered  
Chosen Option : 2

Q.12 The LCM of two numbers is 15 times their HCF. The sum of the LCM and the HCF is 112. If one of the numbers is 49, then the other number is:

- Ans  1. 18  
 2. 21  
 3. 24  
 4. 15

Question ID : 26433079829  
Status : Answered  
Chosen Option : 4

Q.13 In a circular race of 400 m in length, A and B start at speeds of 10 m/s and 16 m/s, respectively, at the same time from the same point. After how much time will they meet for the first time at the starting point when running in the same direction?

- Ans  1. 180 s  
 2. 200 s  
 3. 240 s  
 4. 220 s

Question ID : 26433074968  
Status : Not Answered  
Chosen Option : --

Q.14 What is the length of the longest pole that can be placed in a room of dimensions 10 m × 10 m × 5 m?

- Ans
- 1. 20 m
  - 2. 25 m
  - 3. 15 m
  - 4. 10 m

Question ID : 26433066369  
Status : Answered  
Chosen Option : 3

Q.15 A clothing store announced a discount of 30 percent on shirts. Rivaan wanted to save Rs. 810 in discount. How many shirts should he buy to do so, if marked price of each shirt is Rs. 540?

- Ans
- 1. 6
  - 2. 5
  - 3. 4
  - 4. 8

Question ID : 264330116759  
Status : Answered  
Chosen Option : 2

Q.16 A train 120 m long passes a bridge in 18 seconds moving at a speed of 60 km/h. Find out the length of the bridge.

- Ans
- 1. 150 m
  - 2. 160 m
  - 3. 170 m
  - 4. 180 m

Question ID : 26433075415  
Status : Answered  
Chosen Option : 4

Q.17 A dealer marks his goods 15% above the cost price. Then he allows 20% discount on it. What will be his loss percentage?

- Ans
- 1. 7%
  - 2. 8%
  - 3. 5%
  - 4. 6%

Question ID : 26433082970  
Status : Answered  
Chosen Option : 2

Q.18 Number 350 is increased by 20% and then decreased by 25%. Find the new number.

- Ans  1. 320  
 2. 3244  
 3. 340  
 4. 315

Question ID : 26433080004  
Status : Answered  
Chosen Option : 4

Q.19 The average cost of 10 items is Rs.89. If one item costs Rs.35, then find the average cost of remaining 9 items (in Rs.).

- Ans  1. 90  
 2. 95  
 3. 85  
 4. 80

Question ID : 26433075717  
Status : Answered  
Chosen Option : 2

Q.20 Due to illness the weight of a person has reduced from 80 kg to 64 kg in a month. The percent decrease in the weight of the person is:

- Ans  1. 16 percent  
 2. 14 percent  
 3. 24 percent  
 4. 20 percent

Question ID : 264330116794  
Status : Answered  
Chosen Option : 4

Section : Part-D-English

Q.1 Select the most appropriate meaning of the given idiom.  
Bed of roses

- Ans  1. As one wishes  
 2. Be bound to obey  
 3. A pleasant condition of life  
 4. With all of one's belonging

Question ID : 26433084689  
Status : Answered  
Chosen Option : 3



Q.2 Select the most appropriate meaning of the given idiom.

Bag and baggage

- Ans
- 1. Lots of bags
  - 2. To make a beginning
  - 3. Close friends
  - 4. With all belongings

Question ID : 26433072538  
Status : Not Answered  
Chosen Option : --

Q.3 Select the most appropriate option to fill in the blank.

Alas! The forest turned into a \_\_\_\_\_ land.

- Ans
- 1. bare
  - 2. beer
  - 3. bear
  - 4. buyer

Question ID : 26433090391  
Status : Not Answered  
Chosen Option : --

Q.4 Select the most appropriate option that can substitute the underlined segment in the given sentence. If there is no need to substitute it, select 'No substitution'.

The turtle can live in water as well as land.

- Ans
- 1. No substitution
  - 2. and also land
  - 3. also on land
  - 4. as well as on land.

Question ID : 26433093077  
Status : Answered  
Chosen Option : 4

Q.5 Select the most appropriate option that can substitute the underlined segment in the given sentence.

Baldness is quite very usual among youngsters these days.

- Ans
- 1. happening very surely
  - 2. having very certain
  - 3. getting very common
  - 4. hitting very severely

Question ID : 26433088503  
Status : Not Answered  
Chosen Option : --

**Q.6** Select the most appropriate synonym of the given word.  
**Conceal**

- Ans**
- 1. Manifest
  - 2. Disclose
  - 3. Confess
  - 4. Hide

Question ID : 26433084681  
Status : Answered  
Chosen Option : 4

**Q.7** Select the most appropriate ANTONYM to substitute the underlined word in the given sentence.

Her lively demeanour makes her the ideal choice for this job.

- Ans**
- 1. dreamy
  - 2. slimy
  - 3. grainy
  - 4. gloomy

Question ID : 26433074010  
Status : Answered  
Chosen Option : 1

**Q.8** Select the most appropriate ANTONYM of the given word.

**Cruel**

- Ans**
- 1. Trunk
  - 2. Brutal
  - 3. Kind
  - 4. Savage

Question ID : 26433086374  
Status : Answered  
Chosen Option : 3

**Q.9** Select the INCORRECTLY spelt word.

- Ans**
- 1. Dribbling
  - 2. Slice
  - 3. Temperament
  - 4. Solvant

Question ID : 26433073501  
Status : Answered  
Chosen Option : 3

Q.10 Select the most appropriate ANTONYM of the given word.

**Steadfast**

- Ans  1. Dishonest  
 2. Unwavering  
 3. Immobile  
 4. Dependable

Question ID : 26433072216  
Status : Not Answered  
Chosen Option : --

Q.11 Select the most appropriate option to fill in the blanks and make the sentence meaningful.

They were not \_\_\_\_\_ to eat during the \_\_\_\_\_.

- Ans  1. allowed; brake  
 2. aloud; break  
 3. allowed; break  
 4. aloud; brake

Question ID : 26433092101  
Status : Marked For Review  
Chosen Option : 3

Q.12 Select the option that can be used as a one-word substitute for the given group of words.

The possible results of an action

- Ans  1. Implementation  
 2. Decision  
 3. Ramification  
 4. Causation

Question ID : 26433089380  
Status : Not Answered  
Chosen Option : --

Q.13 Select the most appropriate synonym of the given word.

**Bankrupt**

- Ans  1. Well-off  
 2. Invert  
 3. Insolvent  
 4. Careless

Question ID : 26433072187  
Status : Not Answered  
Chosen Option : --

**Q.14 Select the INCORRECTLY spelt word.**

- Ans  1. Ignorance  
 2. Misspell  
 3. Harass  
 4. Occassion

Question ID : 26433073738  
Status : Answered  
Chosen Option : 3

**Q.15 The following sentence has been split into four segments. Identify the segment that contains an error.**

**Nandu will / leave for the airport / as soon as / a taxi arrive.**

- Ans  1. a taxi arrive  
 2. leave for the airport  
 3. Nandu will  
 4. as soon as

Question ID : 26433099601  
Status : Answered  
Chosen Option : 1

**Comprehension:**

In the following passage, some words have been deleted. Read the passage carefully and select the most appropriate option to fill in each blank.

A natural gas barrier in the upper atmosphere called the ozone layer (1.) \_\_\_\_\_ people and other living things from the sun's harmful ultraviolet (UV) radiation. Ozone exists in tiny concentrations (2.) \_\_\_\_\_ the atmosphere, but the majority (about 90%) is found in the stratosphere, a layer that is 10 to 50 kilometres (3.) \_\_\_\_\_ the surface of Earth. The ozone layer is essential to life on Earth because it (4.) \_\_\_\_\_ out the majority of the sun's harmful UV rays. In the 1970s, researchers (5.) \_\_\_\_\_ that the ozone layer was thinning.

**SubQuestion No : 16**

**Q.16 Select the most appropriate option to fill in blank number 1.**

- Ans  1. attracts  
 2. flourishes  
 3. discovers  
 4. shields

Question ID : 26433089803  
Status : Answered  
Chosen Option : 4

**Comprehension:**

In the following passage, some words have been deleted. Read the passage carefully and select the most appropriate option to fill in each blank.

A natural gas barrier in the upper atmosphere called the ozone layer (1.) \_\_\_\_\_ people and other living things from the sun's harmful ultraviolet (UV) radiation. Ozone exists in tiny concentrations (2.) \_\_\_\_\_ the atmosphere, but the majority (about 90%) is found in the stratosphere, a layer that is 10 to 50 kilometres (3.) \_\_\_\_\_ the surface of Earth. The ozone layer is essential to life on Earth because it (4.) \_\_\_\_\_ out the majority of the sun's harmful UV rays. In the 1970s, researchers (5.) \_\_\_\_\_ that the ozone layer was thinning.

**SubQuestion No : 17**

**Q.17 Select the most appropriate option to fill in blank number 2.**

- Ans  1. below  
 2. in  
 3. throughout  
 4. under

Question ID : 26433089804

Status : Answered

Chosen Option : 2

**Comprehension:**

In the following passage, some words have been deleted. Read the passage carefully and select the most appropriate option to fill in each blank.

A natural gas barrier in the upper atmosphere called the ozone layer (1.) \_\_\_\_\_ people and other living things from the sun's harmful ultraviolet (UV) radiation. Ozone exists in tiny concentrations (2.) \_\_\_\_\_ the atmosphere, but the majority (about 90%) is found in the stratosphere, a layer that is 10 to 50 kilometres (3.) \_\_\_\_\_ the surface of Earth. The ozone layer is essential to life on Earth because it (4.) \_\_\_\_\_ out the majority of the sun's harmful UV rays. In the 1970s, researchers (5.) \_\_\_\_\_ that the ozone layer was thinning.

**SubQuestion No : 18**

**Q.18 Select the most appropriate option to fill in blank number 3.**

- Ans  1. into  
 2. onto  
 3. above  
 4. at

Question ID : 26433089805

Status : Answered

Chosen Option : 3

**Comprehension:**

In the following passage, some words have been deleted. Read the passage carefully and select the most appropriate option to fill in each blank.

A natural gas barrier in the upper atmosphere called the ozone layer (1.) \_\_\_\_\_ people and other living things from the sun's harmful ultraviolet (UV) radiation. Ozone exists in tiny concentrations (2.) \_\_\_\_\_ the atmosphere, but the majority (about 90%) is found in the stratosphere, a layer that is 10 to 50 kilometres (3.) \_\_\_\_\_ the surface of Earth. The ozone layer is essential to life on Earth because it (4.) \_\_\_\_\_ out the majority of the sun's harmful UV rays. In the 1970s, researchers (5.) \_\_\_\_\_ that the ozone layer was thinning.

**SubQuestion No : 19**

**Q.19** Select the most appropriate option to fill in blank number 4.

- Ans  1. blames  
 2. builds  
 3. brims  
 4. blocks

Question ID : 26433089806

Status : Answered

Chosen Option : 4

**Comprehension:**

In the following passage, some words have been deleted. Read the passage carefully and select the most appropriate option to fill in each blank.

A natural gas barrier in the upper atmosphere called the ozone layer (1.) \_\_\_\_\_ people and other living things from the sun's harmful ultraviolet (UV) radiation. Ozone exists in tiny concentrations (2.) \_\_\_\_\_ the atmosphere, but the majority (about 90%) is found in the stratosphere, a layer that is 10 to 50 kilometres (3.) \_\_\_\_\_ the surface of Earth. The ozone layer is essential to life on Earth because it (4.) \_\_\_\_\_ out the majority of the sun's harmful UV rays. In the 1970s, researchers (5.) \_\_\_\_\_ that the ozone layer was thinning.

**SubQuestion No : 20**

**Q.20** Select the most appropriate option to fill in blank number 5.

- Ans  1. learning  
 2. learns  
 3. learnt  
 4. learn

Question ID : 26433089807

Status : Answered

Chosen Option : 3

Section : Part-D-Hindi

**Q.1** निम्नलिखित मुहावरे के लिय उपयुक्त सार्थक शब्द है-  
नानी याद आना

- Ans  1. नानी को याद करना  
 2. छुप कर बैठ जाना  
 3. मुसीबत देखकर घबरा जाना  
 4. किसी से मिलने का मन करना

Question ID : 26433065776

Status : Not Answered

Chosen Option : --

Q.2 'समुद्र की सीमा अनंत है।' वाक्य में प्रयुक्त 'अनंत' शब्द का विलोम शब्द बताइए -

- Ans
- 1. अंतहीन
  - 2. अंत
  - 3. अनंग
  - 4. असीमित

Question ID : 26433069745  
Status : Not Answered  
Chosen Option : --

Q.3 निम्नलिखित में से अव्यय से बना विशेषण शब्द नहीं है -

- Ans
- 1. अगला
  - 2. बाहरी
  - 3. पिछला
  - 4. कैसा

Question ID : 26433085056  
Status : Not Answered  
Chosen Option : --

Q.4 'आज विद्यालय में शिक्षिका ने अंताक्षरी खेलने को कहा।' वाक्य में अशुद्ध वर्तनी वाला शब्द है -

- Ans
- 1. शिक्षिका
  - 2. विद्यालय
  - 3. खेलने को कहा
  - 4. अंताक्षरी

Question ID : 26433069698  
Status : Not Answered  
Chosen Option : --

Q.5 मूल क्रिया, प्रथम प्रेरणार्थक क्रिया और द्वितीय प्रेरणार्थक क्रिया का सही शब्द-क्रम चुनिए।

- Ans
- 1. बजवाना - बजना - बजाना
  - 2. कराना - करना - करावाना
  - 3. उठना - उठाना - उठवाना
  - 4. सुनना - सुनवाना - सुनाना

Question ID : 26433063044  
Status : Not Answered  
Chosen Option : --

Q.6 'दोपहर \_\_\_\_\_'

उपर्युक्त वाक्य में रिक्त स्थान का उपयुक्त विकल्प निम्न में से क्या होगा?

- Ans
- 1. का अर्थ होता है दो पहरों का संग्राम
  - 2. का अर्थ होता है दो पहरों का कदाचार
  - 3. का अर्थ होता है दो पहरों का समाहार
  - 4. का अर्थ होता है दो पहरों का अनाचार

Question ID : 26433067041  
Status : Not Answered  
Chosen Option : --

Q.7 'जिसका खण्डन न हो सके' वाक्यांश के लिए उचित शब्द बताइए -

- Ans
- 1. खंडित
  - 2. खण्डनीय
  - 3. अखण्डनीय
  - 4. समूल

Question ID : 26433065906  
Status : Not Answered  
Chosen Option : --

Q.8 रेखांकित शब्द-समूह के लिए सर्वाधिक उपयुक्त विकल्प चुनें।  
मुसीबत का मारा वह किसी और स्थान पर जा बसा।

- Ans
- 1. तत्र
  - 2. अन्यत्र
  - 3. सर्वत्र
  - 4. अत्र

Question ID : 26433062287  
Status : Not Answered  
Chosen Option : --

Q.9 इस जल में अनेक जीव हैं।

रेखांकित शब्द के विलोम शब्द का चयन कीजिए।

- Ans
- 1. सलिल
  - 2. तालाब
  - 3. थल
  - 4. स्थान

Question ID : 26433079643  
Status : Not Answered  
Chosen Option : --



Q.10 दो घोड़ों पर सवार होने से तुम सफल नहीं रहोगे।  
उपरोक्त वाक्य में रेखांकित अंश के लिए कौन - सा शब्द उपयुक्त होगा?

- Ans
- 1. त्रिरंगी नीति
  - 2. दुरंगी नीति
  - 3. सवारी नीति
  - 4. सफल नीति

Question ID : 26433063059  
Status : Not Answered  
Chosen Option : --

Q.11 'ऊँट के मुँह में जीरा' मुहावरे का सही अर्थ है -

- Ans
- 1. अधिक खाने वाले को कम देना
  - 2. ऊँट को जीरा खिलाना
  - 3. खाने में जीरा डालना
  - 4. मित्रता करना

Question ID : 26433065923  
Status : Not Answered  
Chosen Option : --

Q.12 निम्नलिखित वाक्य में से अशुद्धि पहचानें-  
वह आया परंतु मैं नहीं गया।

- Ans
- 1. आया
  - 2. गया
  - 3. परंतु
  - 4. वह

Question ID : 26433066827  
Status : Not Answered  
Chosen Option : --

Q.13 निम्नलिखित वाक्यांश के लिए उपयुक्त शब्द का चयन विकल्पों में से कीजिए।  
जिसने चित्त किसी विषय में दिया (लगाया) है

- Ans
- 1. दत्तचित्त
  - 2. विषयचित्त
  - 3. अग्रसोची
  - 4. अग्रगामी

Question ID : 26433069997  
Status : Not Answered  
Chosen Option : --

Q.14 हिमालय भारत का ताज है।

रेखांकित शब्द के उचित पर्यायवाची शब्द का चयन कीजिए।

- Ans
- 1. प्रभा
  - 2. गिरिराज
  - 3. मदन
  - 4. आसव

Question ID : 26433079626

Status : Not Answered

Chosen Option : --

Q.15 'आकलन' शब्द के लिए इनमें से उपयुक्त पर्यायवाची शब्द कौन-सा है?

- Ans
- 1. अगणन
  - 2. गणना
  - 3. शरण
  - 4. नूतन

Question ID : 26433066893

Status : Not Answered

Chosen Option : --

**Comprehension:**

निम्न गद्यांश में से कुछ शब्दों को हटा दिया गया है। गद्यांश के नीचे पूछे गए प्रश्नों में इन रिक्त स्थानों के लिए उपयुक्त शब्द का चयन विकल्पों में से कीजिए।

राष्ट्र के 1. \_\_\_\_\_ विकास के लिए चरित्र निर्माण परम आवश्यक है। जिस प्रकार वर्तमान में भौतिक निर्माण का कार्य अनेक योजनाओं के माध्यम से तीव्र गति के साथ सम्पन्न हो रहा है, वैसे ही वर्तमान की सबसे बड़ी आवश्यकता यह है कि देशवासियों के चरित्र निर्माण के लिए भी प्रयत्न किया जाए। उत्तम चरित्रवान व्यक्ति ही 2. \_\_\_\_\_ की सर्वोच्च संपदा है। जनतंत्र के लिए तो यह एक महान 3. \_\_\_\_\_ योजना है। जन-समाज में राष्ट्र, संस्कृति, 4. \_\_\_\_\_ एवं परिवार के प्रति हमारा क्या कर्तव्य है इसका पूर्ण रूप से बोध कराना एवं राष्ट्र में व्याप्त समग्र भ्रष्टाचार के प्रति निषेधात्मक वातावरण का निर्माण करना ही चरित्र निर्माण का प्रथम 5. \_\_\_\_\_ है।

SubQuestion No : 16

Q.16 रिक्त स्थान 1 के लिए सर्वाधिक उपयुक्त शब्द इनमें से क्या होगा?

- Ans
- 1. सभी
  - 2. पूरे
  - 3. अधिक
  - 4. सर्वांगीण

Question ID : 26433072588

Status : Not Answered

Chosen Option : --

**Comprehension:**

निम्न गद्यांश में से कुछ शब्दों को हटा दिया गया है। गद्यांश के नीचे पूछे गए प्रश्नों में इन रिक्त स्थानों के लिए उपयुक्त शब्द का चयन विकल्पों में से कीजिए।

राष्ट्र के 1. \_\_\_\_\_ विकास के लिए चरित्र निर्माण परम आवश्यक है। जिस प्रकार वर्तमान में भौतिक निर्माण का कार्य अनेक योजनाओं के माध्यम से तीव्र गति के साथ सम्पन्न हो रहा है, वैसे ही वर्तमान की सबसे बड़ी आवश्यकता यह है कि देशवासियों के चरित्र निर्माण के लिए भी प्रयत्न किया जाए। उत्तम चरित्रवान व्यक्ति ही 2. \_\_\_\_\_ की सर्वोच्च संपदा है। जनतंत्र के लिए तो यह एक महान 3. \_\_\_\_\_ योजना है। जन-समाज में राष्ट्र, संस्कृति, 4. \_\_\_\_\_ एवं परिवार के प्रति हमारा क्या कर्तव्य है इसका पूर्ण रूप से बोध कराना एवं राष्ट्र में व्याप्त समग्र भ्रष्टाचार के प्रति निषेधात्मक वातावरण का निर्माण करना ही चरित्र निर्माण का प्रथम 5. \_\_\_\_\_ है।

**SubQuestion No : 17**

Q.17 रिक्त स्थान 2 के लिए सर्वाधिक उपयुक्त शब्द इनमें से क्या होगा?

- Ans
- 1. राज्य
  - 2. मोहल्ले
  - 3. राष्ट्र
  - 4. प्रदेश

Question ID : 26433072589

Status : Not Answered

Chosen Option : --

**Comprehension:**

निम्न गद्यांश में से कुछ शब्दों को हटा दिया गया है। गद्यांश के नीचे पूछे गए प्रश्नों में इन रिक्त स्थानों के लिए उपयुक्त शब्द का चयन विकल्पों में से कीजिए।

राष्ट्र के 1. \_\_\_\_\_ विकास के लिए चरित्र निर्माण परम आवश्यक है। जिस प्रकार वर्तमान में भौतिक निर्माण का कार्य अनेक योजनाओं के माध्यम से तीव्र गति के साथ सम्पन्न हो रहा है, वैसे ही वर्तमान की सबसे बड़ी आवश्यकता यह है कि देशवासियों के चरित्र निर्माण के लिए भी प्रयत्न किया जाए। उत्तम चरित्रवान व्यक्ति ही 2. \_\_\_\_\_ की सर्वोच्च संपदा है। जनतंत्र के लिए तो यह एक महान 3. \_\_\_\_\_ योजना है। जन-समाज में राष्ट्र, संस्कृति, 4. \_\_\_\_\_ एवं परिवार के प्रति हमारा क्या कर्तव्य है इसका पूर्ण रूप से बोध कराना एवं राष्ट्र में व्याप्त समग्र भ्रष्टाचार के प्रति निषेधात्मक वातावरण का निर्माण करना ही चरित्र निर्माण का प्रथम 5. \_\_\_\_\_ है।

**SubQuestion No : 18**

Q.18 रिक्त स्थान 3 के लिए सर्वाधिक उपयुक्त शब्द इनमें से क्या होगा?

- Ans
- 1. हितकारी
  - 2. लाभकारी
  - 3. कल्याणकारी
  - 4. मनोहारी

Question ID : 26433072590

Status : Not Answered

Chosen Option : --

**Comprehension:**

निम्न गद्यांश में से कुछ शब्दों को हटा दिया गया है। गद्यांश के नीचे पूछे गए प्रश्नों में इन रिक्त स्थानों के लिए उपयुक्त शब्द का चयन विकल्पों में से कीजिए।

राष्ट्र के 1. \_\_\_\_\_ विकास के लिए चरित्र निर्माण परम आवश्यक है। जिस प्रकार वर्तमान में भौतिक निर्माण का कार्य अनेक योजनाओं के माध्यम से तीव्र गति के साथ सम्पन्न हो रहा है, वैसे ही वर्तमान की सबसे बड़ी आवश्यकता यह है कि देशवासियों के चरित्र निर्माण के लिए भी प्रयत्न किया जाए। उत्तम चरित्रवान व्यक्ति ही 2. \_\_\_\_\_ की सर्वोच्च संपदा है। जनतंत्र के लिए तो यह एक महान 3. \_\_\_\_\_ योजना है। जन-समाज में राष्ट्र, संस्कृति, 4. \_\_\_\_\_ एवं परिवार के प्रति हमारा क्या कर्तव्य है इसका पूर्ण रूप से बोध कराना एवं राष्ट्र में व्याप्त समग्र भ्रष्टाचार के प्रति निषेधात्मक वातावरण का निर्माण करना ही चरित्र निर्माण का प्रथम 5. \_\_\_\_\_ है।

**SubQuestion No : 19**

Q.19 रिक्त स्थान 4 के लिए सर्वाधिक उपयुक्त शब्द इनमें से क्या होगा?

- Ans
- 1. राज्य
  - 2. लोग
  - 3. राष्ट्र
  - 4. समाज

Question ID : 26433072591

Status : Not Answered

Chosen Option : --

**Comprehension:**

निम्न गद्यांश में से कुछ शब्दों को हटा दिया गया है। गद्यांश के नीचे पूछे गए प्रश्नों में इन रिक्त स्थानों के लिए उपयुक्त शब्द का चयन विकल्पों में से कीजिए।

राष्ट्र के 1. \_\_\_\_\_ विकास के लिए चरित्र निर्माण परम आवश्यक है। जिस प्रकार वर्तमान में भौतिक निर्माण का कार्य अनेक योजनाओं के माध्यम से तीव्र गति के साथ सम्पन्न हो रहा है, वैसे ही वर्तमान की सबसे बड़ी आवश्यकता यह है कि देशवासियों के चरित्र निर्माण के लिए भी प्रयत्न किया जाए। उत्तम चरित्रवान व्यक्ति ही 2. \_\_\_\_\_ की सर्वोच्च संपदा है। जनतंत्र के लिए तो यह एक महान 3. \_\_\_\_\_ योजना है। जन-समाज में राष्ट्र, संस्कृति, 4. \_\_\_\_\_ एवं परिवार के प्रति हमारा क्या कर्तव्य है इसका पूर्ण रूप से बोध कराना एवं राष्ट्र में व्याप्त समग्र भ्रष्टाचार के प्रति निषेधात्मक वातावरण का निर्माण करना ही चरित्र निर्माण का प्रथम 5. \_\_\_\_\_ है।

**SubQuestion No : 20**

Q.20 रिक्त स्थान 5 के लिए सर्वाधिक उपयुक्त शब्द इनमें से क्या होगा?

- Ans
- 1. तरीका
  - 2. रास्ता
  - 3. सोपान
  - 4. कदम

Question ID : 26433072592

Status : Not Answered

Chosen Option : --

## Constable GD in CAPFs SSF Rifleman GD in Assam Rifles and Sepoy in NCB Examination 2022

Roll Number	@Qmaths Telegram Channel
Candidate Name	@Qmaths Telegram Channel
Venue Name	TCS Gito Bitan
Exam Date	10/01/2023
Exam Time	2:30 PM - 3:30 PM
Subject	Constable GD Examination 2022

### Section : Part-A-General Intelligence and Reasoning

**Q.1** In this question, three statements are given, followed by two conclusions numbered I and II. Assuming the statements to be true, even if they seem to be at variance with commonly known facts, decide which of the conclusions logically follows/follow from the statements.

**Statements:**

All fans are bulbs.

All bulbs are tube lights.

Some tube lights are new.

**Conclusions:**

I. All fans are new.

II. All tube lights are fans.

**Ans**  1. Only conclusion II follows.

2. Only conclusion I follows.

3. Neither conclusion I nor II follows.

4. Both conclusions I and II follow.

Question ID : 26433070381

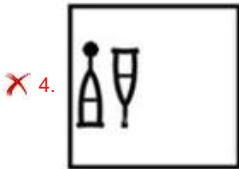
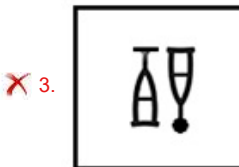

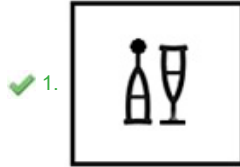
Status : Answered

Chosen Option : 3

Q.2 Select the figure that will come next in the following series.



Ans



Question ID : 26433079024  
Status : Answered  
Chosen Option : 1

Q.3 Select the option that is related to the fifth letter-cluster in the same way as the second letter-cluster is related to the first letter-cluster and the fourth letter-cluster is related to the third letter-cluster.  
ROOT : QQTV :: STEM : VGUO :: LEAF : ?

- Ans
- ✓ 1. GCNH
  - ✗ 2. GCHN
  - ✗ 3. GDNH
  - ✗ 4. NGCH

Question ID : 26433057247  
Status : Answered  
Chosen Option : 1

Q.4 Which letter-cluster will replace the question mark (?) to complete the given series?  
AJRZ, DMTC, ?, JSXI, MVZL

- Ans
- ✗ 1. GRVF
  - ✗ 2. HRVF
  - ✗ 3. HPVF
  - ✓ 4. GPVF

Question ID : 26433067947  
Status : Answered  
Chosen Option : 1

Q.5 'A + B' means 'A is the son of B'  
'A - B' means 'A is the sister of B'  
'A × B' means 'A is the brother of B'  
'A ÷ B' means 'A is the wife of B'  
If  $A + B \div C \times D - E + F$ , then which of the following statements is NOT correct?

- Ans
- 1. A is the grandson of F.
  - 2. A is the son of C.
  - 3. E is the brother of B.
  - 4. D is the daughter of F.

Question ID : 26433090050  
Status : Answered  
Chosen Option : 3

Q.6 In a certain code language, 'FINGER' is written as 'HHPIDT' and 'DESTINY' is written as 'FDUVHPA'. How will 'GRANTED' be written in that language?

- Ans
- 1. ITZPVDF
  - 2. HTZPVCE
  - 3. IQCMVDF
  - 4. HTC OVCE

Question ID : 26433081767  
Status : Answered  
Chosen Option : 3

Q.7 Which two signs should be interchanged to make the below equation mathematically correct?

$$136 \div 17 + 102 - 3 \times 2 = 187$$

- Ans
- 1. + and ×
  - 2. ÷ and ×
  - 3. × and -
  - 4. ÷ and -

Question ID : 264330117569  
Status : Answered  
Chosen Option : 4

Q.8 Seven people A, H, D, F, T, E, and G are sitting in a straight row, facing north. Only three people sit to the left of E. G and H are immediate neighbours of E. A sits at the extreme right of the row. D is the immediate neighbour of A. F sits second to the left of E. Who sits at the extreme left of the row?

- Ans
- 1. T
  - 2. D
  - 3. A
  - 4. F

Question ID : 26433095009  
Status : Answered  
Chosen Option : 1

**Q.9** 6 Friends F, U, K, S, M, and A, are sitting around a circular table facing the centre. A and S are immediate neighbours of K. F is sitting opposite to K. S is not a neighbour of F. M is an immediate neighbour of A and F. Who is the immediate neighbour of A and F if M and S exchange their positions?

- Ans**
- 1. U
  - 2. K
  - 3. S
  - 4. M

Question ID : 26433068077  
Status : Not Answered  
Chosen Option : --

**Q.10** In a certain code language, 'find a solution' is coded as '418', 'be attentive' is coded as '29' and 'answers are correct' is coded as '737'. How will 'check the question' be coded in that language?

- Ans**
- 1. 835
  - 2. 427
  - 3. 538
  - 4. 649

Question ID : 26433067779  
Status : Answered  
Chosen Option : 3

**Q.11** Select the set in which the numbers are related in the same way as are the numbers of the following set.

(NOTE : Operations should be performed on the whole numbers, without breaking down the numbers into its constituent digits. E.g. 13 – Operations on 13 such as adding /subtracting/multiplying etc. to 13 can be performed. Breaking down 13 into 1 and 3 and then performing mathematical operations on 1 and 3 is NOT allowed)  
(216, 12, 15)  
(432, 23, 31)

- Ans**
- 1. (304, 14, 24)
  - 2. (380, 24, 18)
  - 3. (150, 11, 14)
  - 4. (484, 16, 32)

Question ID : 26433076475  
Status : Not Attempted and Marked For Review  
Chosen Option : --

**Q.12** Which option represents the correct order of the given words as they would appear in the English dictionary?

- 1 Seminar
- 2 Semolina
- 3 Senior
- 4 September
- 5 Serious

- Ans**
- 1. 5,4,3,2,1
  - 2. 1,3,4,2,5
  - 3. 1,2,3,4,5
  - 4. 5,3,4,1,2

Question ID : 26433069306  
Status : Answered  
Chosen Option : 3



**Q.13** Which of the following numbers will replace the question mark (?) in the given series?  
3, 21, 147, ?, 7203

- Ans**
- 1. 882
  - 2. 1323
  - 3. 1218
  - 4. 1029

Question ID : 26433092490  
Status : Answered  
Chosen Option : 4

**Q.14** Select the option that is related to the third word in the same way as the second word is related to the first word.  
(The words must be considered as meaningful English words and must not be related to each other based on the number of letters/number of consonants/vowels in the word.)

Mumbai : Maharashtra :: Bhopal : ?

- Ans**
- 1. Madhya Pradesh
  - 2. Delhi
  - 3. Uttar Pradesh
  - 4. Andhra Pradesh

Question ID : 26433087260  
Status : Answered  
Chosen Option : 1

**Q.15** Select the number from among the given options that can replace the question mark (?) in the following series.  
213, 216, 225, 240, 261, ?

- Ans**
- 1. 286
  - 2. 288
  - 3. 289
  - 4. 268

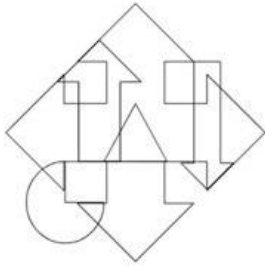
Question ID : 26433078921  
Status : Answered  
Chosen Option : 2

**Q.16** Which of the following terms will replace the question mark (?) in the given series?  
LPKT, NNMR, PLOP, ?, THSL

- Ans**
- 1. RJQN
  - 2. SJQN
  - 3. SJQO
  - 4. RIQN


Question ID : 26433080688  
Status : Answered  
Chosen Option : 4

**Q.17** Select the option figure which is embedded in the given figure. (Rotation is NOT allowed)

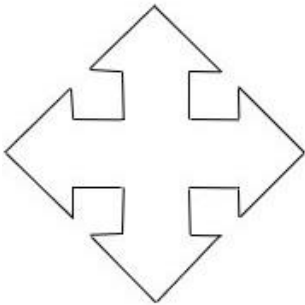


**Ans**

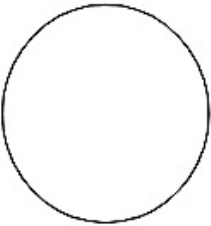
✗ 1.




✓ 2.



✗ 3.



✗ 4.



Question ID : 26433085754  
 Status : Answered  
 Chosen Option : 2

**Q.18** Select the correct combination of mathematical signs to replace the \* signs and balance the given equation.

$$89 * 5 * 15 * 32 * 8 * 18$$

**Ans**

✗ 1. ÷ , + , - , × , =

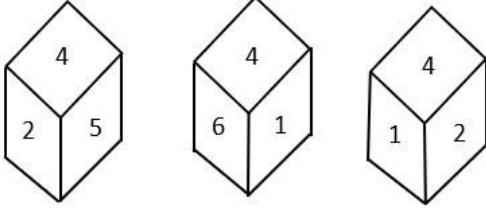
✗ 2. × , + , ÷ , - , =

✗ 3. + , - , ÷ , × , =

✓ 4. - , × , + , ÷ , =

Question ID : 26433085357  
 Status : Answered  
 Chosen Option : 4

**Q.19** Three different positions of the same dice are shown. Find the number on the face opposite the face showing '4'.

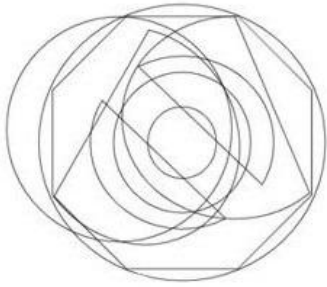


- Ans**
- 1. 2
  - 2. 3
  - 3. 5
  - 4. 1

Question ID : 26433090076  
Status : Answered  
Chosen Option : 2

KD Job Updates

**Q.20** Select the option figure which is embedded in the given figure. (Rotation is NOT allowed)



**Ans**

✗ 1.



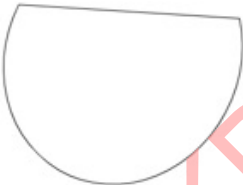
✓ 2.



✗ 3.



✗ 4.



Question ID : 26433085752  
Status : Answered  
Chosen Option : 1

Section : **Part-B-General Knowledge and General awareness**

**Q.1** In the Indian Constitution 'the abolition of untouchability' provision is mentioned in \_\_\_\_\_.

**Ans** ✗ 1. Article 14

✓ 2. Article 17

✗ 3. Article 19

✗ 4. Article 32

Question ID : 26433090671  
Status : Answered  
Chosen Option : 2

**Q.2 What is the colour of the flame when magnesium burns in the presence of oxygen?**

- Ans**  1. Yellow  
 2. Red  
 3. White  
 4. Green

Question ID : 26433087842  
Status : Answered  
Chosen Option : 4

**Q.3 Who among the following Gupta rulers was hailed as 'Indian Napoleon' because of his military achievements?**

- Ans**  1. Chandragupta I  
 2. Chandragupta II  
 3. Srigupta  
 4. Samudragupta

Question ID : 264330115455  
Status : Answered  
Chosen Option : 4

**Q.4 E.Krishna Iyer is associated with which form of dance?**

- Ans**  1. Kathak  
 2. Odissi  
 3. Kuchipudi  
 4. Bharatanatyam

Question ID : 26433086576  
Status : Answered  
Chosen Option : 4

**Q.5 In India, the population census is conducted once every \_\_\_\_\_.**

- Ans**  1. 5 years  
 2. 12 years  
 3. 10 years  
 4. 15 years

Question ID : 264330116024  
Status : Answered  
Chosen Option : 3

**Q.6 Which of the following country is not a part of the Lusofonia Games?**

- Ans**  1. Portugal  
 2. Germany  
 3. India  
 4. Macau

Question ID : 264330115941  
Status : Answered  
Chosen Option : 3

Q.7 Radio broadcasting started in India in 1923 by the \_\_\_\_\_.

- Ans  1. Radio Club of Bombay  
 2. Lions Club of Bombay  
 3. Rotary Club of Bombay  
 4. Rotaract Club Of Bombay

Question ID : 264330115603  
Status : Answered  
Chosen Option : 1

Q.8 Which Article of the Constitution of India talks about Superintendence, direction and control of elections?

- Ans  1. Article 324  
 2. Article 333  
 3. Article 356  
 4. Article 367

Question ID : 26433074899  
Status : Answered  
Chosen Option : 1

Q.9 As of November 2022, who among the following is the Lieutenant Governor of Delhi, India?

- Ans  1. Anil Bajjal  
 2. Vinai Kumar Saxena  
 3. Arvind Kejriwal  
 4. Manoj Sinha

Question ID : 264330114937  
Status : Answered  
Chosen Option : 2

Q.10 While computing the national income, \_\_\_\_\_ is taken as a factor.

- Ans  1. Chemical used  
 2. Electricity bill  
 3. Export  
 4. Road construction

Question ID : 264330115356  
Status : Answered  
Chosen Option : 3

Q.11 Which among the following festival marks the menstruation period of the Goddess Kamakhya in Assam?

- Ans  1. Moatsu  
 2. Chapchar Kut  
 3. Wangala  
 4. Ambubachi Mela

Question ID : 264330115113  
Status : Answered  
Chosen Option : 4

Q.12 The \_\_\_\_\_ industry covers a wide range of products from transistor sets to television.

- Ans
- 1. fertilizer
  - 2. canal irrigation
  - 3. electronics
  - 4. jute processing

Question ID : 264330115401  
Status : Answered  
Chosen Option : 3

Q.13 Three of the following four are examples of Coelenterata phylum, and therefore form a group. Which is the one that does not belong to that group?

- Ans
- 1. Sea-pen
  - 2. Liver fluke
  - 3. Brain coral
  - 4. Sea anemone

Question ID : 264330115186  
Status : Not Answered  
Chosen Option : --

Q.14 \_\_\_\_\_ launched on 25th June 2015 , intends to provide housing for all in urban areas by year 2022.

- Ans
- 1. O-SMART Scheme
  - 2. Pradhan Mantri Garib Kalyan Anna Yojana
  - 3. Pradhan Mantri Awas Yojana (Urban)
  - 4. Global Housing Technology Challenge

Question ID : 264330116161  
Status : Answered  
Chosen Option : 3

Q.15 In which of the following places was the Indian Grand Prix-4 held in June 2021?

- Ans
- 1. Ludhiana
  - 2. Patiala
  - 3. Amritsar
  - 4. Jalandhar

Question ID : 26433072892  
Status : Not Answered  
Chosen Option : --

Q.16 A \_\_\_\_\_ is a barrier across flowing water that obstructs, directs or retards the flow, often creating a reservoir, lake or impoundment.

- Ans
- 1. meander
  - 2. dam
  - 3. tributary
  - 4. moat

Question ID : 26433092218  
Status : Answered  
Chosen Option : 2

Q.17 Who won the Sangeet Natak Akademi Award in Bharatnatyam in 2018?

- Ans  1. Madambi Subramanian Namboodiri  
 2. Radha Sridhar  
 3. Pasumurthy Ramalinga Sastry  
 4. Akham Lakshmi Devi

Question ID : 264330115815  
Status : Not Answered  
Chosen Option : --

Q.18 Which Union Minister launched the India water pitch-pilot-scale start-up challenge in March 2022?

- Ans  1. Kaushal Kishore  
 2. D Thara  
 3. Manoj Joshi  
 4. Hardeep Singh Puri

Question ID : 26433081828  
Status : Answered  
Chosen Option : 3

Q.19 Swami Dayanand Saraswati founded the \_\_\_\_\_, an organisation that attempted to reform Hinduism.

- Ans  1. Arya Samaj  
 2. Adi Hindu Samaj  
 3. Vedant Samaj  
 4. Adi Dharam Samaj

Question ID : 264330103802  
Status : Answered  
Chosen Option : 1

Q.20 As per RBI, in India, services sector accounted for \_\_\_\_\_ of the GDP in the 1980s.

- Ans  1. 58.6 per cent  
 2. 38.6 per cent  
 3. 18.6 per cent  
 4. 78.6 per cent

Question ID : 264330116114  
Status : Answered  
Chosen Option : 1

Section : Part-C-Elementary Mathematics

Q.1 The value of an article depreciated from ₹18,000 to ₹14,580 in 2 years. Find the yearly rate of depreciation in the value of the article.

- Ans  1. 10%  
 2. 12%  
 3. 9%  
 4. 8%

Question ID : 26433082406  
Status : Not Answered  
Chosen Option : --



**Q.2** Ramu and Mohan can separately complete a work in 10 hours and 16 hours, respectively. After working for 2 hours together, Mohan leaves the work. In how many hours will Ramu finish the remaining work?

Ans

1.  $6\frac{1}{4}$

2.  $6\frac{3}{4}$

3.  $5\frac{3}{4}$

4.  $7\frac{3}{4}$

Question ID : 26433075573

Status : Not Answered

Chosen Option : --

**Q.3** A car covers a certain distance in 3 h with a speed of 108 km/h. If the speed is reduced by 27 km/h, then the time taken by the car to cover the same distance will be:

Ans

1.  $2\frac{1}{2}$  h

2. 2 h

3.  $3\frac{1}{2}$  h

4. 4 h

Question ID : 26433087375

Status : Answered

Chosen Option : 4

**Q.4** Rahul travels a certain distance at a speed of 4 km/h and returns at a speed of 3 km/h via same route. What was his average speed for the entire journey (correct to 2 decimal places)?

Ans

1. 3.43 km/h

2. 5.92 km/h

3. 1.23 km/h

4. 2.5 km/h

Question ID : 26433065293

Status : Not Answered

Chosen Option : --

**Q.5** Rohan divides his complete journey in three equal parts and covers the first part at a speed of 30 km/h, the second part at 40 km/h and the last part at 50 km/h with his car. What is the average speed (in km/h) of his car during his entire journey?

Ans

1.  $38\frac{14}{47}$

2.  $35\frac{14}{47}$

3. 40

4. 45

Question ID : 26433075541

Status : Not Answered

Chosen Option : --

Q.6 A can do a piece of work in 8 days and B in 24 days. They begin together, but 4 days before the completion of the work, A leaves. Find the number of days taken by A and B to complete the entire work.

- Ans
- 1. 11 days
  - 2. 8 days
  - 3. 9 days
  - 4. 7 days

Question ID : 264330116845  
Status : Answered  
Chosen Option : 2

Q.7 A thief started his journey at a speed of 60 km/h. After 30 minutes, police started from the same place but at a speed of 80 km/h. How much time (in hours) will the police take to catch the thief?

- Ans
- 1.  $\frac{3}{2}$  hours
  - 2.  $\frac{1}{2}$  hours
  - 3.  $\frac{1}{3}$  hours
  - 4.  $\frac{5}{2}$  hours

Question ID : 26433081044  
Status : Answered  
Chosen Option : 1

Q.8 What is the difference between the compound interest on Rs.5,750 for one year at 16% per annum compounded yearly and compounded half-yearly?

- Ans
- 1. Rs.49.76
  - 2. Rs.36.80
  - 3. Rs.29.50
  - 4. Rs.32.58

Question ID : 26433064989  
Status : Not Answered  
Chosen Option : --

Q.9 Evaluate the following expression.

$$\left[\frac{-4}{7} \div \frac{1}{12}\right] \div \left[-\frac{4}{5} \times \{(-2) - (-\frac{2}{7})\}\right]$$

- Ans
- 1. -5
  - 2.  $-\frac{1}{5}$
  - 3.  $\frac{1}{5}$
  - 4. 5

Question ID : 26433090248  
Status : Answered  
Chosen Option : 1

**Q.10** The volumes of two cones are in the ratio of 3 : 2 and their radii are in the ratio 3 : 4. The ratio of their heights is:

- Ans  1. 8:3  
 2. 9:4  
 3. 4:9  
 4. 2:1

Question ID : 26433075481  
Status : Not Answered  
Chosen Option : --

**Q.11** In an election, there were two candidates A and B. The total number of voters in the constituency was 90000 and 70% of the total votes were polled. If 60% of the polled votes were cast in favour of A, how many votes were received by B?

- Ans  1. 28500  
 2. 25200  
 3. 28700  
 4. 28600

Question ID : 26433079770  
Status : Not Answered  
Chosen Option : --

**Q.12** The curved surface area of a sphere is  $1386 \text{ cm}^2$ . The volume of this sphere is:

- Ans  1.  $4815 \text{ cm}^3$   
 2.  $4851 \text{ cm}^3$   
 3.  $2425.5 \text{ cm}^3$   
 4.  $1617 \text{ cm}^3$

Question ID : 26433087406  
Status : Not Answered  
Chosen Option : --

**Q.13** The ratio of milk and water in two containers of 20 litres and 36 litres are in the ratio 3 : 7 and 7 : 5, respectively. What will be the ratio of milk and water if the two containers are mixed together?

- Ans  1. 9 : 13  
 2. 27 : 29  
 3. 21 : 23  
 4. 21 : 25

Question ID : 26433091899  
Status : Not Answered  
Chosen Option : --

**Q.14** The square of 28 is divided by the largest number that can exactly divide both 42 and 56. What is the result?

- Ans  1. 28  
 2. 14  
 3. 42  
 4. 56

Question ID : 264330116654  
Status : Answered  
Chosen Option : 1

**Q.15** A table whose marked price ₹300 is sold at two successive discounts of 20% and 10%. If in addition, a discount of 5% is offered on cash payment, then the cash price for the table is:

- Ans
- 1. ₹210.25
  - 2. ₹216.50
  - 3. ₹240.25
  - 4. ₹205.20

Question ID : 26433082095  
Status : Not Answered  
Chosen Option : --

**Q.16** The price of petrol is raised to Rs.96.5 per litre from Rs.92 per litre. What is the percentage increase in price of petrol?

- Ans
- 1. 4.5%
  - 2. 4.7%
  - 3. 4.9%
  - 4. 5.1%

Question ID : 26433071246  
Status : Not Answered  
Chosen Option : --

**Q.17** The third proportional to 24 and 36 is:

- Ans
- 1. 45
  - 2. 64
  - 3. 54
  - 4. 46

Question ID : 26433074993  
Status : Not Answered  
Chosen Option : --

**Q.18** Under a discount scheme, after allowing a discount of 20%, there is still a gain of 10%. The marked price is what percentage more than the cost price?

- Ans
- 1. 39%
  - 2. 37.5%
  - 3. 40%
  - 4. 35.2%

Question ID : 26433083042  
Status : Not Answered  
Chosen Option : --

**Q.19** Harshi bought a new sweatshirt at the store, when they were giving a 40 percent discount. If the marked price of the sweatshirt was Rs. 2999, then how much did Harshi pay with the discount?

- Ans
- 1. Rs. 2099.20
  - 2. Rs. 1799.40
  - 3. Rs. 2399.50
  - 4. Rs. 1899.80

Question ID : 264330116730  
Status : Not Answered  
Chosen Option : --

Q.20 A man sold two chairs for Rs.475 each, gaining 25% on one and losing 20% on the other. Had he sold the two chairs for Rs.575 each, what would have been his gain/loss percentage (rounded off to the nearest integer)?

- Ans
- 1. 45% gain
  - 2. 18% gain
  - 3. 41% gain
  - 4. 25% loss

Question ID : 26433071284  
Status : Not Answered  
Chosen Option : --

Section : Part-D-English

Q.1 Select the most appropriate option to fill in the blank.

We would \_\_\_\_\_ to travel by train rather than bus due to the poor road conditions in the village.

- Ans
- 1. prefer
  - 2. assure
  - 3. make it
  - 4. drop

Question ID : 26433091877  
Status : Answered  
Chosen Option : 1

Q.2 Select the most appropriate option that can substitute the underlined segment in the given sentence.

The participants are rehearse their roles.

- Ans
- 1. are rehearsed
  - 2. has been rehearsing
  - 3. have rehearse
  - 4. are rehearsing

Question ID : 26433091869  
Status : Answered  
Chosen Option : 4

Q.3 Select the option with the correct spelling to replace the underlined word in the given sentence.

She hit him in a moment of abomination.

- Ans
- 1. aberation
  - 2. abberation
  - 3. aberattion
  - 4. aberration

Question ID : 26433094408  
Status : Answered  
Chosen Option : 1

Q.4 Select the most appropriate ANTONYM of the given word.

Anxious

- Ans  1. Considerate  
 2. Unconcerned  
 3. Stealthy  
 4. Haughty

Question ID : 26433074380  
Status : Answered  
Chosen Option : 3

Q.5 Identify the correctly spelt sentence.

- Ans  1. My grandfather planted couliflower in the garden.  
 2. My grandfather planted kauliflower in the garden.  
 3. My grandfather planted cauleflower in the garden.  
 4. My grandfather planted cauliflower in the garden.

Question ID : 26433072831  
Status : Answered  
Chosen Option : 4

Q.6 Select the most appropriate synonym of the underlined word.

Music is a therapy for everyone – plants, birds, animals and human-beings – to flourish and rejuvenate.

- Ans  1. modify  
 2. prosper  
 3. refreshen  
 4. fortify

Question ID : 26433089100  
Status : Answered  
Chosen Option : 3

Q.7 Select the most appropriate meaning of the given idiom.

After one's own heart

- Ans  1. Having a face as one's own  
 2. Having likes and dislikes dissimilar to one's own  
 3. Having likes and dislikes far to one's own  
 4. Having likes and dislikes similar to one's own

Question ID : 26433072278  
Status : Answered  
Chosen Option : 4

**Q.8** The following sentence has been divided into parts. One of them may contain an error. Select the part that contains the error from the given options. If you don't find any error, mark 'No error' as your answer.  
Our soldiers have being / making a clean sweep of the / sheep and poultry on the route.

- Ans**
- 1. No error
  - 2. sheep and poultry on the route
  - 3. Our soldiers have being
  - 4. making a clean sweep of the

Question ID : 264330114510  
Status : **Answered**  
Chosen Option : 4

**Q.9** Select the most appropriate ANTONYM of the italicised word in the given sentence.

It is *absurd* to argue about this.

- Ans**
- 1. facetious
  - 2. fundamental
  - 3. reasonable
  - 4. amazing

Question ID : 26433096209  
Status : **Answered**  
Chosen Option : 3

**Q.10** Select the most appropriate option to fill in the blank.

\_\_\_\_\_ men command respect.

- Ans**
- 1. Holy
  - 2. Holey
  - 3. Holly
  - 4. Wholly

Question ID : 26433073934  
Status : **Answered**  
Chosen Option : 1

**Q.11** Select the most appropriate synonym of the given word.

Sumptuous

- Ans**
- 1. Mammoth
  - 2. Humble
  - 3. Minuscule
  - 4. Lavish

Question ID : 26433073980  
Status : **Not Answered**  
Chosen Option : --

**Q.12** Select the most appropriate idiom to substitute the underlined group of words in the given sentence.

Once in a year, the management of the institute surveys the whole situation.

- Ans**
- 1. take stock of
  - 2. perplexed with
  - 3. makes a mark
  - 4. comes to the front

Question ID : 26433073878  
Status : **Answered**  
Chosen Option : 3

**Q.13** Select the correct pair of words for the blanks in the given sentence.

My cousin likes \_\_\_\_\_ root and \_\_\_\_\_ around the bush is one of the idioms in English.

- Ans**
- 1. beat; beat
  - 2. beat; beet
  - 3. beet; beat
  - 4. beet; beet

Question ID : 26433060543  
Status : **Not Answered**  
Chosen Option : --

**Q.14** Select the most appropriate homonym to fill in the blank.  
He confessed about his affairs as the \_\_\_\_\_ made him sleepless.

- Ans**
- 1. guilt
  - 2. gilled
  - 3. gild
  - 4. guild

Question ID : 26433058525  
Status : **Not Answered**  
Chosen Option : --

**Q.15** Select the most appropriate option that can substitute the underlined segment in the given sentence.

The students were boring by the lecture delivered on environmental issues.

- Ans**
- 1. The students were bores
  - 2. The students bored
  - 3. The students were barring
  - 4. The students were bored

Question ID : 26433091771  
Status : **Answered**  
Chosen Option : 2



**Comprehension:**

In the following passage, some words have been deleted. Read the passage carefully and select the most appropriate option to fill in each blank.

Children especially (1)\_\_\_\_\_ avoid such foods or try to reduce intake and instead, eat healthy food for (2)\_\_\_\_\_ growth. Schools can (3)\_\_\_\_\_ the quality of the food being sold in the canteens and also ensure that the children bring wholesome nutrition food (4)\_\_\_\_\_ home. (5)\_\_\_\_\_ should be appointed to check the calories content and food value of food served in the canteens and setting definite tiffin patterns.

**SubQuestion No : 16**

**Q.16 Select the most appropriate option to fill in blank number 1.**

- Ans  1. might  
 2. will  
 3. should  
 4. shall

Question ID : 26433089046  
Status : Answered  
Chosen Option : 3

**Comprehension:**

In the following passage, some words have been deleted. Read the passage carefully and select the most appropriate option to fill in each blank.

Children especially (1)\_\_\_\_\_ avoid such foods or try to reduce intake and instead, eat healthy food for (2)\_\_\_\_\_ growth. Schools can (3)\_\_\_\_\_ the quality of the food being sold in the canteens and also ensure that the children bring wholesome nutrition food (4)\_\_\_\_\_ home. (5)\_\_\_\_\_ should be appointed to check the calories content and food value of food served in the canteens and setting definite tiffin patterns.

**SubQuestion No : 17**

**Q.17 Select the most appropriate option to fill in blank number 2.**

- Ans  1. elegant  
 2. proper  
 3. interesting  
 4. awkward

Question ID : 26433089047  
Status : Answered  
Chosen Option : 2

**Comprehension:**

In the following passage, some words have been deleted. Read the passage carefully and select the most appropriate option to fill in each blank.

Children especially (1)\_\_\_\_\_ avoid such foods or try to reduce intake and instead, eat healthy food for (2)\_\_\_\_\_ growth. Schools can (3)\_\_\_\_\_ the quality of the food being sold in the canteens and also ensure that the children bring wholesome nutrition food (4)\_\_\_\_\_ home. (5)\_\_\_\_\_ should be appointed to check the calories content and food value of food served in the canteens and setting definite tiffin patterns.

**SubQuestion No : 18**

**Q.18 Select the most appropriate option to fill in blank number 3.**

- Ans  1. allow  
 2. show  
 3. proclaim  
 4. monitor

Question ID : 26433089048  
Status : Answered  
Chosen Option : 4

**Comprehension:**

In the following passage, some words have been deleted. Read the passage carefully and select the most appropriate option to fill in each blank.

Children especially (1)\_\_\_\_\_ avoid such foods or try to reduce intake and instead, eat healthy food for (2)\_\_\_\_\_ growth. Schools can (3)\_\_\_\_\_ the quality of the food being sold in the canteens and also ensure that the children bring wholesome nutrition food (4)\_\_\_\_\_ home. (5)\_\_\_\_\_ should be appointed to check the calories content and food value of food served in the canteens and setting definite tiffin patterns.

**SubQuestion No : 19**

**Q.19 Select the most appropriate option to fill in blank number 4.**

- Ans**  1. through  
 2. with  
 3. from  
 4. in

Question ID : 26433089049  
Status : Answered  
Chosen Option : 3

**Comprehension:**

In the following passage, some words have been deleted. Read the passage carefully and select the most appropriate option to fill in each blank.

Children especially (1)\_\_\_\_\_ avoid such foods or try to reduce intake and instead, eat healthy food for (2)\_\_\_\_\_ growth. Schools can (3)\_\_\_\_\_ the quality of the food being sold in the canteens and also ensure that the children bring wholesome nutrition food (4)\_\_\_\_\_ home. (5)\_\_\_\_\_ should be appointed to check the calories content and food value of food served in the canteens and setting definite tiffin patterns.

**SubQuestion No : 20**

**Q.20 Select the most appropriate option to fill in blank number 5.**

- Ans**  1. Technicians  
 2. Dieticians  
 3. Paediatricians  
 4. Opticians

Question ID : 26433089050  
Status : Answered  
Chosen Option : 2

**Section : Part-D-Hindi**

**Q.1 'नव्या ने सुमति की बहुत भर्त्सना की'**  
उक्त वाक्य में प्रयुक्त 'भर्त्सना' के स्थान पर उसके विलोम शब्द का प्रयोग निम्न में से किस वाक्य में किया गया है?

- Ans**  1. नव्या ने सुमति की बहुत बुराई की।  
 2. नव्या ने सुमति की बहुत आलोचना की।  
 3. नव्या ने सुमति की बहुत निंदा की।  
 4. नव्या ने सुमति की बहुत प्रशंसा की।

Question ID : 26433067027  
Status : Not Answered  
Chosen Option : --

Q.2 वाक्य में रेखांकित शब्द को दिए गए शब्दों में से उचित शब्द से बदलें।  
भरत को कैकयी की करनी पर करूणा हुई।

- Ans  1. क्षोभ  
 2. दया  
 3. दुःख  
 4. पश्चात्ताप

Question ID : 26433062873  
Status : Not Answered  
Chosen Option : --

Q.3 निम्नलिखित वाक्यांश के लिय उपयुक्त सार्थक शब्द है-  
बिना स्वार्थ के कार्य करने वाला

- Ans  1. हितेषी  
 2. सहायक  
 3. निस्वार्थी  
 4. स्वार्थी

Question ID : 26433065765  
Status : Not Answered  
Chosen Option : --

Q.4 निम्नलिखित वाक्यों में रिक्त स्थान की पूर्ति उचित एकार्थी शब्द-युग्म से करें-  
साहसी व्यक्ति \_\_\_\_\_ हो जाता है। कछुआ \_\_\_\_\_-चर जीव है।

- Ans  1. भय सहित- केवल एक  
 2. जिसमें भय हो- जिसमें भय ना हो  
 3. साथ साथ- ऊपर  
 4. अभय-उभय

Question ID : 26433091326  
Status : Not Answered  
Chosen Option : --

Q.5 'लेने के देने पड़ना' मुहावरे का उचित अर्थ है-

- Ans  1. लाभ के बदले हानि  
 2. कुछ न देना  
 3. बहुत अधिक लाभ होना  
 4. व्यापार करना

Question ID : 26433065879  
Status : Not Answered  
Chosen Option : --

Q.6 वर्तनी की दृष्टि से दिए गए वाक्य के अशुद्ध भाग का चयन कीजिए-  
पूर्ण स्वस्थ के लिए शुद्ध आहार-विहार आवश्यक है।

- Ans  1. आहार-विहार  
 2. पूर्ण स्वस्थ  
 3. के लिए शुद्ध  
 4. आवश्यक है।

Question ID : 26433062885  
Status : Not Answered  
Chosen Option : --

Q.7 निम्न में से कौन-सा शब्द 'हाथ' शब्द का पर्यायवाची शब्द नहीं है?

- Ans
- 1. बाहु
  - 2. पाणि
  - 3. कर
  - 4. दन्त

Question ID : 26433067083  
Status : Not Answered  
Chosen Option : --

Q.8 निम्नलिखित में से शुद्ध वाक्य का चयन कीजिए-

- Ans
- 1. आप कब्बे आए?
  - 2. आप कब आए?
  - 3. आप कब आया?
  - 4. आप कब आयो?

Question ID : 26433091312  
Status : Not Answered  
Chosen Option : --

Q.9 'हिमालय की चोटियाँ तो \_\_\_\_\_ करती हैं।' वाक्य में रिक्त स्थान की पूर्ति उचित मुहावरे द्वारा कीजिए।

- Ans
- 1. गगनचुम्बी हैं
  - 2. आसमान चूमती है
  - 3. आसमान से बातें करती हैं
  - 4. राई का पहाड़ है

Question ID : 26433062610  
Status : Not Answered  
Chosen Option : --

Q.10 'वह धन जो आधिकारिक रूप से राज्य को मिलता हो' - वाक्यांश के लिए एक शब्द होगा

- Ans
- 1. कर
  - 2. राजस्व
  - 3. चुंगी
  - 4. राजधन

Question ID : 26433065729  
Status : Not Answered  
Chosen Option : --

Q.11 निम्नलिखित विकल्पों में से किस एक वाक्य में संख्यावाचक विशेषण का उचित प्रयोग नहीं किया गया है?

- Ans
- 1. नव्या के काले बाल हैं।
  - 2. दुर्घटना में पहलवान को अधिक घाव हो गए हैं।
  - 3. हमारी बगिया में कुछ अधिक वृक्ष हो गए हैं।
  - 4. महात्मा गाँधी बहुत थोड़े कपड़े पहनते थे।

Question ID : 26433062966  
Status : Not Answered  
Chosen Option : --

Q.12 किसी पदार्थ या राज्य का दूसरे पदार्थ या राज्य में मिल जाना - वाक्यांश के लिए एक शब्द होगा-

- Ans
- 1. संगम
  - 2. सहयोग
  - 3. विलय
  - 4. एकीकरण

Question ID : 26433065727  
Status : Not Answered  
Chosen Option : --

Q.13 निम्न में से कौन-सा शब्द 'कुबेर' शब्द का पर्यायवाची शब्द नहीं है?

- Ans
- 1. धनपति
  - 2. किन्नरपति
  - 3. मुनि
  - 4. यक्ष

Question ID : 26433067085  
Status : Not Answered  
Chosen Option : --

Q.14 निम्नलिखित विकल्पों में से कौन सा एक वाक्य प्रश्नवाचक सर्वनाम से संबंधित नहीं है?

- Ans
- 1. यह मूर्खता किसने की है?
  - 2. संसार का संचालन और नियमन कौन करता है?
  - 3. यह गाड़ी किसकी है?
  - 4. किसी ने जोर से चीत्कार की?

Question ID : 26433091239  
Status : Not Answered  
Chosen Option : --

Q.15 दिए गये वाक्य के अशुद्ध भाग का चयन कीजिए।  
एक मेरे प्रिय मेधावी छात्र ने अच्छा नाम कमाया।

- Ans
- 1. प्रिय मेधावी
  - 2. छात्र ने अच्छा
  - 3. नाम कमाया।
  - 4. एक मेरे

Question ID : 26433085086  
Status : Not Answered  
Chosen Option : --

**Comprehension:**

निम्नलिखित गद्यांश में कुछ शब्दों को हटा दिया गया है। दिए गए विकल्पों की सहायता से रिक्त स्थानों की पूर्ति कीजिए। प्रत्येक संख्या के लिए सबसे उपयुक्त विकल्प का चयन करें।

आज का जीवन 1. \_\_\_\_\_ से भरा है। महत्त्वपूर्ण और अनिवार्य 2. \_\_\_\_\_ को पूरा करने में अत्यधिक संघर्ष करना पड़ता है। महँगाई बहुत 3. \_\_\_\_\_ गई है। इसके साथ ही बच्चों से लेकर 4. \_\_\_\_\_ तक की आवश्यकताएँ इतनी अधिक हो गई हैं कि परिवार के प्रत्येक सदस्य को धनोपार्जन के लिए घर से बाहर जाना पड़ता है। घर और अपनों के लिए समय ही नहीं होता। जीवन संघर्ष का 5. \_\_\_\_\_ बन गया है।

**SubQuestion No : 16**

**Q.16 रिक्त स्थान 1 की पूर्ति के लिए सबसे उपयुक्त विकल्प का चयन कीजिए।**

- Ans**
- 1. कार्य
  - 2. सदस्यों
  - 3. खेल-कूद
  - 4. भागदौड़

Question ID : 264330111119  
Status : Not Answered  
Chosen Option : --

**Comprehension:**

निम्नलिखित गद्यांश में कुछ शब्दों को हटा दिया गया है। दिए गए विकल्पों की सहायता से रिक्त स्थानों की पूर्ति कीजिए। प्रत्येक संख्या के लिए सबसे उपयुक्त विकल्प का चयन करें।

आज का जीवन 1. \_\_\_\_\_ से भरा है। महत्त्वपूर्ण और अनिवार्य 2. \_\_\_\_\_ को पूरा करने में अत्यधिक संघर्ष करना पड़ता है। महँगाई बहुत 3. \_\_\_\_\_ गई है। इसके साथ ही बच्चों से लेकर 4. \_\_\_\_\_ तक की आवश्यकताएँ इतनी अधिक हो गई हैं कि परिवार के प्रत्येक सदस्य को धनोपार्जन के लिए घर से बाहर जाना पड़ता है। घर और अपनों के लिए समय ही नहीं होता। जीवन संघर्ष का 5. \_\_\_\_\_ बन गया है।

**SubQuestion No : 17**

**Q.17 रिक्त स्थान 2 की पूर्ति के लिए सबसे उपयुक्त विकल्प का चयन कीजिए।**

- Ans**
- 1. आवश्यकताओं
  - 2. अवसर
  - 3. भावना
  - 4. घटना

Question ID : 2643301111120  
Status : Not Answered  
Chosen Option : --

**Comprehension:**

निम्नलिखित गद्यांश में कुछ शब्दों को हटा दिया गया है। दिए गए विकल्पों की सहायता से रिक्त स्थानों की पूर्ति कीजिए। प्रत्येक संख्या के लिए सबसे उपयुक्त विकल्प का चयन करें।

आज का जीवन 1. \_\_\_\_\_ से भरा है। महत्त्वपूर्ण और अनिवार्य 2. \_\_\_\_\_ को पूरा करने में अत्यधिक संघर्ष करना पड़ता है। महँगाई बहुत 3. \_\_\_\_\_ गई है। इसके साथ ही बच्चों से लेकर 4. \_\_\_\_\_ तक की आवश्यकताएँ इतनी अधिक हो गई हैं कि परिवार के प्रत्येक सदस्य को धनोपार्जन के लिए घर से बाहर जाना पड़ता है। घर और अपनों के लिए समय ही नहीं होता। जीवन संघर्ष का 5. \_\_\_\_\_ बन गया है।

**SubQuestion No : 18**

**Q.18 रिक्त स्थान 3 की पूर्ति के लिए सबसे उपयुक्त विकल्प का चयन कीजिए।**

- Ans**
- 1. नीचे
  - 2. बन
  - 3. कम
  - 4. बढ़

Question ID : 2643301111121  
Status : Not Answered  
Chosen Option : --

**Comprehension:**

निम्नलिखित गद्यांश में कुछ शब्दों को हटा दिया गया है। दिए गए विकल्पों की सहायता से रिक्त स्थानों की पूर्ति कीजिए। प्रत्येक संख्या के लिए सबसे उपयुक्त विकल्प का चयन करें।

आज का जीवन 1. \_\_\_\_\_ से भरा है। महत्त्वपूर्ण और अनिवार्य 2. \_\_\_\_\_ को पूरा करने में अत्यधिक संघर्ष करना पड़ता है। महँगाई बहुत 3. \_\_\_\_\_ गई है। इसके साथ ही बच्चों से लेकर 4. \_\_\_\_\_ तक की आवश्यकताएँ इतनी अधिक हो गई हैं कि परिवार के प्रत्येक सदस्य को धनोपार्जन के लिए घर से बाहर जाना पड़ता है। घर और अपनों के लिए समय ही नहीं होता। जीवन संघर्ष का 5. \_\_\_\_\_ बन गया है।

**SubQuestion No : 19**

Q.19 रिक्त स्थान 4 की पूर्ति के लिए सबसे उपयुक्त विकल्प का चयन कीजिए।

- Ans  1. बूढ़ों  
 2. सरकार  
 3. बाहर  
 4. किसी की भी

Question ID : 264330111122  
Status : Not Answered  
Chosen Option : --

**Comprehension:**

निम्नलिखित गद्यांश में कुछ शब्दों को हटा दिया गया है। दिए गए विकल्पों की सहायता से रिक्त स्थानों की पूर्ति कीजिए। प्रत्येक संख्या के लिए सबसे उपयुक्त विकल्प का चयन करें।

आज का जीवन 1. \_\_\_\_\_ से भरा है। महत्त्वपूर्ण और अनिवार्य 2. \_\_\_\_\_ को पूरा करने में अत्यधिक संघर्ष करना पड़ता है। महँगाई बहुत 3. \_\_\_\_\_ गई है। इसके साथ ही बच्चों से लेकर 4. \_\_\_\_\_ तक की आवश्यकताएँ इतनी अधिक हो गई हैं कि परिवार के प्रत्येक सदस्य को धनोपार्जन के लिए घर से बाहर जाना पड़ता है। घर और अपनों के लिए समय ही नहीं होता। जीवन संघर्ष का 5. \_\_\_\_\_ बन गया है।

**SubQuestion No : 20**

Q.20 रिक्त स्थान 5 की पूर्ति के लिए सबसे उपयुक्त विकल्प का चयन कीजिए।

- Ans  1. प्रकार  
 2. सहायक  
 3. कारण  
 4. पर्याय

Question ID : 264330111123  
Status : Not Answered  
Chosen Option : --

# Constable GD in CAPFs SSF Rifleman GD in Assam Rifles and Sepoy in NCB Examination 2022

Roll Number	KD Job Updates
Candidate Name	KD Job Updates
Venue Name	iON Digital Zone iDZ 1 Sector 62
Exam Date	10/01/2023
Exam Time	5:15 PM - 6:15 PM
Subject	Constable GD Examination 2022

Section : Part-A-General Intelligence and Reasoning

Q.1 Select the option that is related to the third word in the same way as the second word is related to the first word. (The words must be considered as meaningful English words and must not be related to each other based on the number of letters/number of consonants/vowels in the word.)  
Meghalaya : Shillong :: Kerala : ?

- Ans
- 1. Panaji
  - 2. Chennai
  - 3. Thiruvananthapuram
  - 4. Bengaluru

Question ID : 26433067371  
Status : Answered  
Chosen Option : 3

Q.2 Select the option that is related to the fifth number in the same way as the second number is related to the first number and the fourth number is related to the third number.  
48 : 5 :: 30 : 3 :: 57 : ?

- Ans
- 1. 2
  - 2. 4
  - 3. 6
  - 4. 7

Question ID : 26433069418  
Status : Answered  
Chosen Option : 3

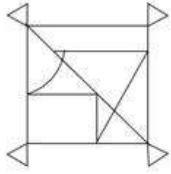
Q.3 Which of the following numbers will replace the question mark (?) in the given series?  
23, 27, 35, ?, 63, 83, 107

- Ans
- 1. 47
  - 2. 43
  - 3. 55
  - 4. 39

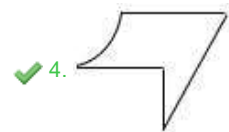
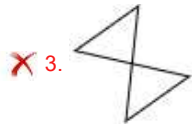
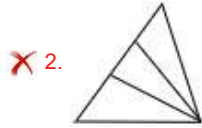
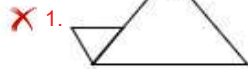
Question ID : 26433068090  
Status : Answered  
Chosen Option : 1



Q.4 Select the option figure which is embedded in the given figure. (Rotation is NOT allowed)



Ans



Question ID : 26433069343  
Status : Answered  
Chosen Option : 4

Q.5 Which two signs should be interchanged to make the given equation correct?  
 $561 \div 11 \times 22 + 6 - 25 = 158$

Ans ✓ 1. + and ×

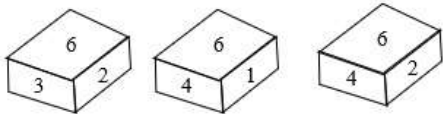
✗ 2. ÷ and ×

✗ 3. ÷ and +

✗ 4. + and -

Question ID : 26433082742  
Status : Answered  
Chosen Option : 1

Q.6 Three different positions of the same dice are shown. Find the number on the face opposite the face showing '6'.



- Ans
- 1. 4
  - 2. 1
  - 3. 3
  - 4. 5

Question ID : 26433090066  
Status : Answered  
Chosen Option : 4

Q.7 In a certain code language, 'STATION' is written as 'UVYVGMP' and 'TRIUMPH' is written as 'VTGSORJ'. How will 'HOLIDAY' be written in that language?

- Ans
- 1. JMNGFXW
  - 2. JMNGBXW
  - 3. JMNGFCW
  - 4. JMNGFYA

Question ID : 26433081759  
Status : Answered  
Chosen Option : 4

Q.8 In a certain code language, 'TABLE' is written as '£@6#%', 'LARK' is written as '#@28' and 'BUCKET' is written as '6\$+8%£'. How will 'CLARET' be written in that language?

- Ans
- 1. +#@2%£
  - 2. +#26%\$
  - 3. 8#2%6+
  - 4. 8#@6%£

Question ID : 26433069608  
Status : Answered  
Chosen Option : 1

Q.9 Which letter-cluster will replace the question mark (?) to complete the given series?  
CTUJ, EVWL, ?, IZAP, KBCR

- Ans
- 1. GXYN
  - 2. FXYO
  - 3. FXYN
  - 4. GXYO

Question ID : 26433067940  
Status : Answered  
Chosen Option : 1

Q.10 Which of the following numbers will replace the question mark (?) in the given series?  
115, 102, 107, 94, 99, ?

- Ans
- 1. 92
  - 2. 84
  - 3. 96
  - 4. 86

Question ID : 26433076749  
Status : Answered  
Chosen Option : 4

Q.11 Select the option that is related to the fifth letter-cluster in the same way as the second letter-cluster is related to the first letter-cluster and the fourth letter-cluster is related to the third letter-cluster.

PENALTY : QFOBMUZ :: OFFENSE : PGGFOTF :: NERVOUS : ?

- Ans
- 1. VOUSNER
  - 2. SUOVREN
  - 3. RENVIOUS
  - 4. OFSWPVT

Question ID : 26433069637  
Status : Answered  
Chosen Option : 4

Q.12 There are 7 people sitting around a circular table facing towards the centre - A, B, C, D, E, F, and G. A is sitting to the immediate right of C and immediate left of D. G is sitting to the immediate left of C and immediate right of F. E is sitting to the immediate left of F and immediate right of B. B is sitting second right of A. Who is the immediate neighbour of A and B?

- Ans
- 1. G
  - 2. F
  - 3. E
  - 4. D

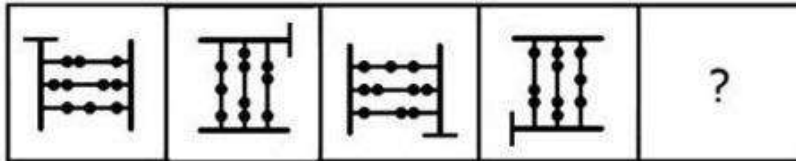
Question ID : 26433074607  
Status : Answered  
Chosen Option : 4

Q.13 Which of the following terms will replace the question mark (?) in the given series?  
MQEV, ?, QOIT, SNKS, UMMR

- Ans
- 1. OPHU
  - 2. NPGU
  - 3. OPGU
  - 4. PPHV

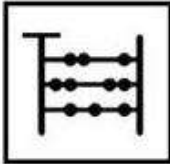
Question ID : 26433068308  
Status : Answered  
Chosen Option : 3

Q.14 Select the figure that will come next in the following series.

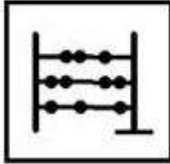


Ans

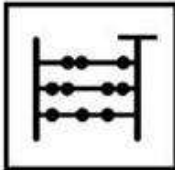
✓ 1.



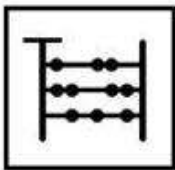
✗ 2.



✗ 3.



✗ 4.




Question ID : 26433078968

Status : Answered

Chosen Option : 1

Q.15 Select the correct mirror image of the given figure when the mirror is placed at MN as shown below.

PsyCHoLoGy



Ans

✓ 1. 

✗ 2. 

✗ 3. 

✗ 4. 

Question ID : 26433085562

Status : Answered

Chosen Option : 1

Q.16 Seven people A, B, C, D, E, F, and G are sitting in a straight row facing the North. A is sitting in the centre of the row. G and E are sitting at the ends of the row. B is sitting to the immediate left of A. F is sitting to the immediate right of G. D is sitting to the immediate left of E. C is sitting to the second left of E. Who is sitting between G and B?

Ans ✗ 1. A

✗ 2. C

✓ 3. F

✗ 4. D

Question ID : 26433074622

Status : Answered

Chosen Option : 3

Q.17 Which option represents the correct order of the given words as they would appear in the English dictionary?

1 inside

2 inertia

3 instruction

4 insight

5 individual

Ans ✗ 1. 5,3,1,2,4

✓ 2. 5,2,1,4,3

✗ 3. 5,1,2,3,4

✗ 4. 5,1,3,4,2

Question ID : 26433069299

Status : Answered

Chosen Option : 2

Q.18 A @ B means 'A is the sister of B'.  
A & B means 'A is the brother of B'.  
A # B means 'A is the wife of B'.  
A ^ B means 'A is the mother of B'.  
A + B means 'A is the father of B'.  
If  $X + T \wedge M \# G \& C \wedge K @ H \wedge Q$ , then which of the following statements is NOT correct?

- Ans
- 1. G is the son-in-law of T.
  - 2. G is the father of K.
  - 3. C is the mother of H.
  - 4. X is the maternal grandfather of M.

Question ID : 26433068952  
Status : Answered  
Chosen Option : 2

Q.19 Three statements are given followed by three conclusions. Assuming the statements to be true, even if they seem to be at variance with commonly known facts, decide which of the conclusions logically follow(s) from the statements.

Statements:

Some computers are phones.  
All phones are calculators.  
All calculators are i-pads.

Conclusions:

1. Some i-pads are computers.
2. All calculators are phones.
3. Some i-pads are phones.

- Ans
- 1. All conclusions follow.
  - 2. Only conclusions 1 and 2 follow.
  - 3. Only conclusions 2 and 3 follow.
  - 4. Only conclusions 1 and 3 follow.

Question ID : 26433089424  
Status : Answered  
Chosen Option : 4

Q.20 Which two signs should be interchanged to make the below equation mathematically correct?

$$48 - 96 \times 4 \div 3 + 58 = 34$$

- Ans
- 1. + and -
  - 2.  $\times$  and +
  - 3. - and  $\div$
  - 4.  $\div$  and  $\times$

Question ID : 264330117499  
Status : Answered  
Chosen Option : 4

**Q.1 Which of the following Articles of the Constitution of India deals with the state executive?**

- Ans**
- 1. Articles 134-143
  - 2. Articles 123-132
  - 3. Articles 153-167
  - 4. Articles 145-150

Question ID : 26433086852  
Status : Answered  
Chosen Option : 3

**Q.2 The 'Method of Election of the president' in the Indian Constitution has been borrowed from the \_\_\_\_\_ constitution.**

- Ans**
- 1. Irish
  - 2. South African
  - 3. German
  - 4. United States of America

Question ID : 26433064813  
Status : Not Answered  
Chosen Option : --

**Q.3 Mohiniyattam is a solo classical dance form related to which of the following states?**

- Ans**
- 1. Kerala
  - 2. Uttar Pradesh
  - 3. Karnataka
  - 4. Bihar

Question ID : 26433071658  
Status : Answered  
Chosen Option : 1

**Q.4 Which Indian origin Sikh has been given New South Wales Australian of the Year award 2023 for supporting the community affected by floods, bushfires, drought and Covid-19?**

- Ans**
- 1. Navjit Kaur Brar
  - 2. Amar Singh
  - 3. Jatinder Singh
  - 4. Kamaljit Arora

Question ID : 264330114989  
Status : Not Answered  
Chosen Option : --

Q.5 In India, in which year was the National Food for Work Programme scheme launched?

- Ans  1. 2005  
 2. 2000  
 3. 2004  
 4. 2003

Question ID : 264330116078  
Status : Not Answered  
Chosen Option : --

Q.6 Makar Sankranti is celebrated as Pedda Panduga in which of the following states?

- Ans  1. Andhra Pradesh  
 2. Tamil Nadu  
 3. Karnataka  
 4. Kerala

Question ID : 264330115106  
Status : Answered  
Chosen Option : 2

Q.7 Pick the odd one out (Hint: fiber crops)

- Ans  1. rubber  
 2. cotton  
 3. hemp  
 4. jute

Question ID : 264330115533  
Status : Answered  
Chosen Option : 3

Q.8 The mode of nutrition in which organisms take in nutrients from dead and decaying matter is called \_\_\_\_\_ nutrition.

- Ans  1. Monotrophic  
 2. Saprotrophic  
 3. Autotrophic  
 4. Heterotrophic

Question ID : 264330115254  
Status : Answered  
Chosen Option : 3

Q.9 'Mother of Mohiniyattam' is a docu-fiction based on \_\_\_\_\_.

- Ans  1. Shovana Narayan  
 2. Kalamandalam Kallyanikutty Amma  
 3. Mahaboob Subhani  
 4. Anuradha Pandey

Question ID : 264330115878  
Status : Answered  
Chosen Option : 2



Q.10 Budget documents classify total expenditure into \_\_\_\_\_.

- Ans  1. services and non- goods services  
 2. goods and incomes  
 3. part and whole expenditure  
 4. plan and non-plan expenditure

Question ID : 264330115286  
Status : Answered  
Chosen Option : 4

Q.11 Which of the following was the main demand of the peasant movement of Kheda?

- Ans  1. Free irrigation facility to be provided  
 2. Plantation system to be dropped  
 3. Revenue collection be relaxed  
 4. Hybrid seeds to be provided

Question ID : 26433089883  
Status : Not Answered  
Chosen Option : --

Q.12 In India, during October-November, with the apparent movement of the sun towards the south, the \_\_\_\_\_ over the northern plains becomes weaker.

- Ans  1. Upper level trough  
 2. Monsoon trough  
 3. Lee trough  
 4. Inverted trough

Question ID : 264330115988  
Status : Answered  
Chosen Option : 1

Q.13 Techniques of making silk were first invented in China around \_\_\_\_\_ years ago.

- Ans  1. 20000  
 2. 15000  
 3. 7000  
 4. 30000

Question ID : 26433090573  
Status : Not Answered  
Chosen Option : --

Q.14 Which Union Minister of Government of India inaugurated the Tech Conclave 2022 in March?

- Ans
- 1. Amit Shah
  - 2. Smriti Irani
  - 3. Rajnath Singh
  - 4. Ashwini Vaishnaw

Question ID : 264330114930  
Status : Answered  
Chosen Option : 1

Q.15 Which of the following player was the highest scorer in the final match of cricket world cup 1983?

- Ans
- 1. Krishnamachari Srikkanth
  - 2. Mohinder Amarnath
  - 3. Sunil Gavaskar
  - 4. Kapil Dev

Question ID : 264330116295  
Status : Answered  
Chosen Option : 4

Q.16 Which country hosted the Asian Athletics Championship in 2019?

- Ans
- 1. South Korea
  - 2. Jordan
  - 3. Philippines
  - 4. Qatar

Question ID : 264330115925  
Status : Not Answered  
Chosen Option : --

Q.17 Lime stone is the raw material of \_\_\_\_\_, among the given industries.

- Ans
- 1. plastic industry
  - 2. Furniture industry
  - 3. cement industry
  - 4. electronic industry

Question ID : 264330115394  
Status : Answered  
Chosen Option : 3

Q.18 The Supreme Court of India passed a judgment in \_\_\_\_\_ in which it declared the practice of Triple Talaq as unconstitutional and the practice of the same be void.

- Ans
- 1. 2018
  - 2. 2014
  - 3. 2017
  - 4. 2013

Question ID : 264330116224  
Status : Not Answered  
Chosen Option : --

Q.19 At independence, about \_\_\_\_\_ percent of the India's population was dependent on agriculture.

- Ans
- 1. 90
  - 2. 50
  - 3. 100
  - 4. 75

Question ID : 264330116158  
Status : Answered  
Chosen Option : 1

Q.20  $H_2SO_4$  is the chemical formula for \_\_\_\_\_.

- Ans
- 1. Oil of Vitriol
  - 2. Green Vitriol
  - 3. Muriatic Acid
  - 4. Blue Vitriol

Question ID : 264330115165  
Status : Answered  
Chosen Option : 3

Section : Part-C-Elementary Mathematics

Q.1 A batsman makes a score of 97 runs in 15th inning and thus increases his average by 5. Find his average after 15th inning.

- Ans
- 1. 15
  - 2. 82
  - 3. 27
  - 4. 92

Question ID : 26433082642  
Status : Answered  
Chosen Option : 1

**Q.2** The population of a town increased from 145000 to 200000 in a decade. What will be the simple growth rate percent of population per annum?

- Ans
- 1. 4.856 percent
  - 2. 5.789 percent
  - 3. 3.793 percent
  - 4. 2.165 percent

Question ID : 264330116828  
Status : Answered  
Chosen Option : 3

**Q.3** A can paint seven chairs in an hour and B can paint four chairs in an hour. Determine how much time they will require to paint 55 chairs when they work together.

- Ans
- 1. 7 hours
  - 2. 5 hours
  - 3. 6 hours
  - 4. 4 hours

Question ID : 26433074311  
Status : Answered  
Chosen Option : 2

**Q.4** A sum of Rs.1,875 at 4% per annum increased to Rs.2,028 in certain time. If interest is compounded yearly, then what is the time period?

- Ans
- 1. 2.5 years
  - 2. 3 years
  - 3. 3.5 years
  - 4. 2 years

Question ID : 26433075677  
Status : Answered  
Chosen Option : 4

**Q.5** 37 is what percentage of 55? (correct up to two decimal places)

- Ans
- 1. 67.27%
  - 2. 64.91%
  - 3. 69.41%
  - 4. 62.77%

Question ID : 26433080298  
Status : Answered  
Chosen Option : 1

Q.6 Calculate the volume (in  $\text{cm}^3$ ) of the cylinder having height 20 cm and base radius 14 cm.

- Ans
- 1.  $13,230 \text{ cm}^3$
  - 2.  $13,300 \text{ cm}^3$
  - 3.  $12,320 \text{ cm}^3$
  - 4.  $12,200 \text{ cm}^3$

Question ID : 26433075821  
Status : Answered  
Chosen Option : 3

Q.7 The current population of a city is 125000. If the population grows at the rate of 2% per year, what will be the population of the city after 3 years?

- Ans
- 1. 133512
  - 2. 132651
  - 3. 130896
  - 4. 132165

Question ID : 26433080338  
Status : Answered  
Chosen Option : 2

Q.8 The marked price of a washing machine is Rs.23,500 and the shopkeeper sold it for Rs.20,915. What is the percentage of discount offered by the shopkeeper?

- Ans
- 1. 10%
  - 2. 9%
  - 3. 12%
  - 4. 11%

Question ID : 26433075189  
Status : Answered  
Chosen Option : 4

Q.9 A dealer professes to sell his goods at a loss of 16%, but weights 750 gm in place of a kg weight. Find his total profit percentage.

- Ans
- 1. 15 Percent
  - 2. 11 Percent
  - 3. 14 Percent
  - 4. 12 Percent

Question ID : 26433080170  
Status : Answered  
Chosen Option : 4

Q.10 The LCM of 32 and 40 equals to 9 less than the square of X. Find the positive value of X.

- Ans
- 1. 14
  - 2. 11
  - 3. 12
  - 4. 13

Question ID : 264330116647  
Status : Answered  
Chosen Option : 4

Q.11 A man buys a toy car for ₹135 and sells it for ₹150, find his gain percentage.

- Ans
- 1. 10.10%
  - 2. 10%
  - 3. 11%
  - 4. 11.11%

Question ID : 26433076173  
Status : Answered  
Chosen Option : 4

Q.12 The curved surface area of a cone is  $4,455 \text{ cm}^2$  and its diameter is 105 cm. What is its slant height? Take  $\pi = \frac{22}{7}$

- Ans
- 1. 23 cm
  - 2. 21 cm
  - 3. 25 cm
  - 4. 27 cm

Question ID : 26433076253  
Status : Answered  
Chosen Option : 4

Q.13 In a linear race of 1000 m, Saloni beat Shweta by 100 m, while Shweta beat Sonam by 150 m. By how many metres does Saloni beat Sonam, in the same race?

- Ans
- 1. 220 m
  - 2. 250 m
  - 3. 225 m
  - 4. 235 m

Question ID : 26433080378  
Status : Answered  
Chosen Option : 2

Q.14 Four prime numbers are arranged in ascending order. The product of the first three numbers is 255 and that of the last three is 1955. The largest prime number is:

- Ans  1. 23  
 2. 31  
 3. 17  
 4. 29

Question ID : 26433081471  
Status : Answered  
Chosen Option : 3

Q.15 A boy travelled from the home to the college at the rate of 35 km/h and walked back at the rate of 3 km/h. If the whole journey took 6 h 30 min, then the distance of the college from the home (correct to 2 decimal places) is:

- Ans  1. 18.01 km  
 2. 17.58 km  
 3. 17.25 km  
 4. 17.96 km

Question ID : 26433081594  
Status : Not Answered  
Chosen Option : --

Q.16 Aman, Ram, and Kapil can complete a work in 68 days, 51 days, and 17 days respectively. If they work on alternate days such that Aman works on first day, Ram works on second day, Kapil works on third day and then again Aman works on fourth day and so on, then find the approximate number of days in which 50% of the work is completed.

- Ans  1. 19 days  
 2. 16 days  
 3. 15 days  
 4. 18 days

Question ID : 264330116908  
Status : Not Answered  
Chosen Option : --

Q.17 Find the mean proportional between 0.64 and 0.81.

- Ans  1. 0.70  
 2. 0.72  
 3. 0.66  
 4. 0.68

Question ID : 26433080113  
Status : Answered  
Chosen Option : 2

Q.18 Two numbers are in the ratio 3 : 8. If 8 is added to each number, then the ratio becomes 1 : 2. If 4 is subtracted from each number, then the ratio will become:

- Ans
- 1. 7 : 2
  - 2. 8 : 3
  - 3. 2 : 7
  - 4. 3 : 8

Question ID : 26433087371  
Status : Answered  
Chosen Option : 3

Q.19 A farmer has 10 Parrots and 40 horses. Find the average number of legs per animal.

- Ans
- 1. 3.2
  - 2. 3.4
  - 3. 3.6
  - 4. 3.8

Question ID : 264330116693  
Status : Answered  
Chosen Option : 3

Q.20 With a 10% discount on the marked price, a seller earns a 5% profit. If the marked price is increased by 5% and two successive discounts of 5% each are offered, how much percentage profit does the seller earn?

- Ans
- 1. 10.5%
  - 2. 10%
  - 3. 11%
  - 4. 11.5%

Question ID : 26433085450  
Status : Not Answered  
Chosen Option : --

Section : Part-D-English

Q.1 Select the most appropriate option that can substitute the underlined segment in the given sentence.

As of now, they have finished the construction of the ground floor.

- Ans
- 1. construction of the ground flavor
  - 2. construction of the ground floor
  - 3. construction of the ground flower
  - 4. construction of the ground flounder

Question ID : 264330100991  
Status : Not Answered  
Chosen Option : --



Q.2 Select the most appropriate option that can substitute the underlined segment in the given sentence.

I was delight in the moment I saw her.

- Ans
- 1. delighted at
  - 2. had delightful
  - 3. was delighting
  - 4. was delighted

Question ID : 26433088167  
Status : Not Answered  
Chosen Option : --

Q.3 Select the most appropriate synonym of the word given in brackets to fill in the blank.

Jack met with a/an \_\_\_\_\_ (deadly) accident.

- Ans
- 1. vital
  - 2. deaden
  - 3. fatal
  - 4. explicit

Question ID : 26433089076  
Status : Not Answered  
Chosen Option : --

Q.4 Select the most appropriate ANTONYM of the given word.

Solitary

- Ans
- 1. Indifferent
  - 2. Lone
  - 3. Gregarious
  - 4. Loan

Question ID : 26433073867  
Status : Not Answered  
Chosen Option : --

Q.5 Select the most appropriate synonym for the underlined word in the given sentence.

The pearls produced in that oyster farm have lost all their lustre.

- Ans
- 1. front
  - 2. shine
  - 3. lustful
  - 4. gloom

Question ID : 26433073753  
Status : Not Answered  
Chosen Option : --

**Q.6** Select the most appropriate option to fill in the blank.  
The person in ragged clothes sleeping on the street is a \_\_\_\_\_ man.

- Ans
- 1. cunning
  - 2. learned
  - 3. homeless
  - 4. wealthy

Question ID : 26433085600  
Status : Not Answered  
Chosen Option : --

**Q.7** Select the most appropriate synonym of the underlined word in the given sentence.

The country has an abundant supply of minerals.

- Ans
- 1. Artificial
  - 2. Sparse
  - 3. Ample
  - 4. Natural

Question ID : 26433072061  
Status : Not Answered  
Chosen Option : --

**Q.8** Select the most appropriate meaning of the given idiom.

The whys and wherefores

- Ans
- 1. Underlying reason
  - 2. Summary
  - 3. Interrogation
  - 4. Minute observation

Question ID : 26433072433  
Status : Not Answered  
Chosen Option : --

**Q.9** Select the most appropriate ANTONYM of the given word.

Acceptance

- Ans
- 1. Stoppage
  - 2. Allocation
  - 3. Rejection
  - 4. Trouble

Question ID : 26433073797  
Status : Not Answered  
Chosen Option : --

Q.10 The sentence given below has one misspelt word. Spot the INCORRECTLY spelt word and select its correct spelling.

He wishes to be an orthopidic surgeon.

- Ans
- 1. Orthapedic
  - 2. Ortopeedic
  - 3. Orthopaedic
  - 4. Orthopadic

Question ID : 26433073557  
Status : Not Answered  
Chosen Option : --

Q.11 The following sentence has been split into four segments. Identify the segment that contains a grammatical error.

My aunt Geeta, / is knowing / my friend Rudransh / very well.

- Ans
- 1. very well
  - 2. My aunt Geeta
  - 3. is knowing
  - 4. my friend Rudransh

Question ID : 26433086457  
Status : Not Answered  
Chosen Option : --

Q.12 Select the INCORRECTLY spelt word.

- Ans
- 1. Spead
  - 2. Task
  - 3. Salt
  - 4. Brand

Question ID : 26433073495  
Status : Not Answered  
Chosen Option : --

Q.13 Select the most appropriate ANTONYM of the given word.

Captivity

- Ans
- 1. Persistent
  - 2. Accused
  - 3. Liberty
  - 4. Haemorrhage

Question ID : 26433089114  
Status : Not Answered  
Chosen Option : --

Q.14 Select the most appropriate homonym to fill in the blank.

What \_\_\_\_\_ of a movie is this?

- Ans  1. kind  
 2. can  
 3. keen  
 4. con

Question ID : 26433088791  
Status : Not Answered  
Chosen Option : --

Q.15 Select the most appropriate option to fill in the blank.

The Conjuring is not a movie for the \_\_\_\_\_ of heart.

- Ans  1. faint  
 2. emotional  
 3. strong  
 4. paint

Question ID : 26433084604  
Status : Not Answered  
Chosen Option : --

#### Comprehension:

In the following passage, some words have been deleted. Read the passage carefully and select the most appropriate option to fill in each blank.

The blockade of the national highways leading to the Manipur valley, called by the United Naga Council (UNC), has been in place since 1 November. This has severely affected life in the State, with shortages and (1) \_\_\_\_\_ costs of essential supplies such as fuel and food, even as demonetisation has (2) \_\_\_\_\_ problems. Blockades like this are not new to Manipur. In 2011, there was initially a hundred-day- plus blockade enforced by Kuki-led groups, and countered later by Naga groups, which together had a (3) \_\_\_\_\_ effect on life in Manipur. This time the blockade is in place to oppose the creation of new districts by the Okram Ibobi Singh government. On 9 December it issued a (4) \_\_\_\_\_ notification for the creation of seven new districts by bifurcating seven (of a total of nine) districts. This decision had as much to do with long-pending demands — in particular, for a new Kuki-majority district to be carved out of the larger Senapati hill district — as with easing administrative access to (5) \_\_\_\_\_ areas from the district headquarters.

SubQuestion No : 16

Q.16 Select the most appropriate option to fill in blank number 1.

- Ans  1. diminishing  
 2. upfront  
 3. varying  
 4. escalating

Question ID : 26433088621  
Status : Not Answered  
Chosen Option : --

**Comprehension:**

In the following passage, some words have been deleted. Read the passage carefully and select the most appropriate option to fill in each blank.

The blockade of the national highways leading to the Manipur valley, called by the United Naga Council (UNC), has been in place since 1 November. This has severely affected life in the State, with shortages and (1)\_\_\_\_\_ costs of essential supplies such as fuel and food, even as demonetisation has (2)\_\_\_\_\_ problems. Blockades like this are not new to Manipur. In 2011, there was initially a hundred-day- plus blockade enforced by Kuki-led groups, and countered later by Naga groups, which together had a (3)\_\_\_\_\_ effect on life in Manipur. This time the blockade is in place to oppose the creation of new districts by the Okram Ibobi Singh government. On 9 December it issued a (4) \_\_\_\_\_ notification for the creation of seven new districts by bifurcating seven (of a total of nine) districts. This decision had as much to do with long-pending demands — in particular, for a new Kuki-majority district to be carved out of the larger Senapati hill district — as with easing administrative access to (5)\_\_\_\_\_ areas from the district headquarters.

**SubQuestion No : 17**

**Q.17** Select the most appropriate option to fill in blank number 2.

Ans  1. vindicated

2. exacerbated

3. pacified

4. exceed

Question ID : 26433088622

Status : Not Answered

Chosen Option : --

**Comprehension:**

In the following passage, some words have been deleted. Read the passage carefully and select the most appropriate option to fill in each blank.

The blockade of the national highways leading to the Manipur valley, called by the United Naga Council (UNC), has been in place since 1 November. This has severely affected life in the State, with shortages and (1)\_\_\_\_\_ costs of essential supplies such as fuel and food, even as demonetisation has (2)\_\_\_\_\_ problems. Blockades like this are not new to Manipur. In 2011, there was initially a hundred-day- plus blockade enforced by Kuki-led groups, and countered later by Naga groups, which together had a (3)\_\_\_\_\_ effect on life in Manipur. This time the blockade is in place to oppose the creation of new districts by the Okram Ibobi Singh government. On 9 December it issued a (4) \_\_\_\_\_ notification for the creation of seven new districts by bifurcating seven (of a total of nine) districts. This decision had as much to do with long-pending demands — in particular, for a new Kuki-majority district to be carved out of the larger Senapati hill district — as with easing administrative access to (5)\_\_\_\_\_ areas from the district headquarters.

**SubQuestion No : 18**

**Q.18** Select the most appropriate option to fill in blank number 3.

Ans  1. counter

2. acting

3. debilitating

4. befitting

Question ID : 26433088623

Status : Not Answered

Chosen Option : --

**Comprehension:**

In the following passage, some words have been deleted. Read the passage carefully and select the most appropriate option to fill in each blank.

The blockade of the national highways leading to the Manipur valley, called by the United Naga Council (UNC), has been in place since 1 November. This has severely affected life in the State, with shortages and (1)\_\_\_\_\_ costs of essential supplies such as fuel and food, even as demonetisation has (2)\_\_\_\_\_ problems. Blockades like this are not new to Manipur. In 2011, there was initially a hundred-day- plus blockade enforced by Kuki-led groups, and countered later by Naga groups, which together had a (3)\_\_\_\_\_ effect on life in Manipur. This time the blockade is in place to oppose the creation of new districts by the Okram Ibobi Singh government. On 9 December it issued a (4) \_\_\_\_\_ notification for the creation of seven new districts by bifurcating seven (of a total of nine) districts. This decision had as much to do with long-pending demands — in particular, for a new Kuki-majority district to be carved out of the larger Senapati hill district — as with easing administrative access to (5)\_\_\_\_\_ areas from the district headquarters.

**SubQuestion No : 19**

**Q.19** Select the most appropriate option to fill in blank number 4.

- Ans
- 1. detail
  - 2. lively
  - 3. gazette
  - 4. live

Question ID : 26433088624

Status : Not Answered

Chosen Option : --

**Comprehension:**

In the following passage, some words have been deleted. Read the passage carefully and select the most appropriate option to fill in each blank.

The blockade of the national highways leading to the Manipur valley, called by the United Naga Council (UNC), has been in place since 1 November. This has severely affected life in the State, with shortages and (1)\_\_\_\_\_ costs of essential supplies such as fuel and food, even as demonetisation has (2)\_\_\_\_\_ problems. Blockades like this are not new to Manipur. In 2011, there was initially a hundred-day- plus blockade enforced by Kuki-led groups, and countered later by Naga groups, which together had a (3)\_\_\_\_\_ effect on life in Manipur. This time the blockade is in place to oppose the creation of new districts by the Okram Ibobi Singh government. On 9 December it issued a (4) \_\_\_\_\_ notification for the creation of seven new districts by bifurcating seven (of a total of nine) districts. This decision had as much to do with long-pending demands — in particular, for a new Kuki-majority district to be carved out of the larger Senapati hill district — as with easing administrative access to (5)\_\_\_\_\_ areas from the district headquarters.

**SubQuestion No : 20**

**Q.20** Select the most appropriate option to fill in blank number 5.

- Ans
- 1. far-flung
  - 2. offshore
  - 3. outskirts
  - 4. secluded

Question ID : 26433088625

Status : Not Answered

Chosen Option : --

Q.1 मैंने विद्यालय के प्रधानाचार्य से प्रार्थना की कि मुझे छात्रवृत्ति प्रदान करें।  
उपरोक्त वाक्य में प्रयुक्त 'प्रार्थना' शब्द का सही अर्थ है -

- Ans
- 1. अपनी बात मनवाने के लिए कहना
  - 2. आग्रह पूर्वक विनती करना
  - 3. विनय पूर्वक विनती करना
  - 4. तर्क से अपनी बात रखना

Question ID : 26433080914  
Status : Answered  
Chosen Option : 2

Q.2 निम्नलिखित वाक्य में त्रुटि पहचानें-  
मैंने हाथ जोड़ दिया।

- Ans
- 1. दीया
  - 2. हाथ
  - 3. मैंने
  - 4. जोड़

Question ID : 26433066821  
Status : Answered  
Chosen Option : 4

Q.3 रेखांकित शब्द-समूह के लिए सर्वाधिक उपयुक्त विकल्प चुनें।  
आकाश में इतने तारे हैं कि गिने न जा सकें।

- Ans
- 1. असंख्य
  - 2. गणनीय
  - 3. गिनती के
  - 4. अनगिनत

Question ID : 26433062281  
Status : Answered  
Chosen Option : 4

Q.4 वाक्यांश और उसके लिए एक शब्द का निम्न में से कौन सा युग्म अशुद्ध है?

- Ans
- 1. लाभ पाने की इच्छा-लिप्सा
  - 2. जो किसी से जीता न जा सके-अजेय
  - 3. सात दिन का समूह-सप्ताह
  - 4. नाप तौलकर खर्च करने वाला-मितभाषी

Question ID : 264330109529  
Status : Answered  
Chosen Option : 4

Q.5 अरे ! साँप कहाँ गया ?

इस वाक्य में प्रयुक्त क्रिया विशेषण 'कहाँ' किस प्रकार का क्रियाविशेषण है ?

- Ans
- 1. साधारण क्रिया विशेषण
  - 2. अनुबद्ध क्रिया विशेषण
  - 3. मूल क्रिया विशेषण
  - 4. यौगिक क्रिया विशेषण

Question ID : 26433079231

Status : Answered

Chosen Option : 4

Q.6 रिक्त स्थान की पूर्ति उचित कारक चिन्ह से करें-

श्याम मीरा \_\_\_\_\_ खिलौने लाया।

- Ans
- 1. में
  - 2. के लिए
  - 3. ने
  - 4. का

Question ID : 26433085031

Status : Answered

Chosen Option : 2

Q.7 निम्न वाक्य में अनुपयुक्त शब्द-प्रयोग सम्बन्धी अशुद्धि दूर करने के लिए, रेखांकित भाग को उचित विकल्प चुनकर प्रतिस्थापित करें-  
'हिन्दी-साहित्य में आचार्य रामचंद्र शुक्ल एक बड़े व्याख्याता माने जाते हैं।'

- Ans
- 1. बड़े अच्छे वक्ता
  - 2. एक उत्कृष्ट विश्लेषक
  - 3. एक अच्छे वर्चक
  - 4. एक बड़े साहित्यक

Question ID : 26433062805

Status : Answered

Chosen Option : 2

Q.8 निम्नलिखित मुहावरे के लिए उपयुक्त सार्थक शब्द है-  
जी अच्छा होना

- Ans
- 1. तबियत ठीक होना
  - 2. बहाना करना
  - 3. हिम्मत करना
  - 4. रंग विरंगी

Question ID : 26433065770

Status : Answered

Chosen Option : 1



Q.9 निम्न में से कौन सा 'जल' शब्द का पर्यायवाची है?

- Ans
- 1. अंबुधि
  - 2. नीरज
  - 3. नीर
  - 4. वारिज

Question ID : 26433092014  
Status : Answered  
Chosen Option : 2

Q.10 रितेश को जब कक्षा में प्रथम आने का समाचार मिला, तो उसकी \_\_\_\_\_ खिल गई।  
रिक्त स्थान की पूर्ति उचित शब्द द्वारा कीजिए।

- Ans
- 1. बाँछें
  - 2. आँखे
  - 3. मुस्कान
  - 4. चेहरा

Question ID : 26433062618  
Status : Answered  
Chosen Option : 2

Q.11 निम्नलिखित में से शुद्ध वाक्य है-

- Ans
- 1. बहुत लोग एक साथ दौड़ पड़े।
  - 2. बहुत लोग एक सथ दौड़ पड़े।
  - 3. बहुत लोग ईक साथ दौड़ पड़े।
  - 4. बहुत लोग एक साथ दौठ पड़े।

Question ID : 26433066842  
Status : Answered  
Chosen Option : 1

Q.12 दिए गए विकल्पों में से कौन सा शब्द निम्नलिखित वाक्य में रेखांकित शब्द का पर्यायवाची नहीं है?

रासबिहारी बोस दिल्ली 'षड्यन्त्र' के मुख्य अभियुक्त थे।

- Ans
- 1. साजिद
  - 2. दुरभिसंधि
  - 3. कुचक्र
  - 4. साजिश

Question ID : 26433091340  
Status : Answered  
Chosen Option : 1

Q.13 भगवान दिवाकर जीवनदायी हैं।

रेखांकित शब्द के उचित पर्यायवाची शब्द का चयन कीजिए।

- Ans  1. सूर्य  
 2. नयन  
 3. शशि  
 4. अब्ज

Question ID : 26433079620

Status : Answered

Chosen Option : 1

Q.14 निम्नलिखित वाक्य में रेखांकित खंड के स्थान पर प्रयुक्त होने वाले सबसे उपयुक्त विकल्प का चयन कीजिए-

वह अतिथि सेवा के तत्पर लिए है।

- Ans  1. के लिए तत्पर है  
 2. के लिए है तत्पर  
 3. तत्पर है के लिए  
 4. तत्पर के लिए है

Question ID : 26433070051

Status : Answered

Chosen Option : 1

Q.15 'अनुसंधान \_\_\_\_\_'

उपर्युक्त वाक्य में रिक्त स्थान के लिए उपयुक्त वाक्यांश का चयन विकल्पों में से कीजिए।

- Ans  1. की अर्थ में खोज होता है।  
 2. खोज का अनर्थ होता है।  
 3. द्वारा खोज का अर्थ होता है।  
 4. का अर्थ खोज होता है।

Question ID : 26433067035

Status : Answered

Chosen Option : 4

**Comprehension:**

निम्नलिखित गद्यांश में कुछ शब्दों को हटा दिया गया है। दिए गए विकल्पों की सहायता से रिक्त स्थानों की पूर्ति कीजिए। प्रत्येक संख्या के लिए सबसे उपयुक्त विकल्प का चयन करें।

आत्मनिर्भरता से तात्पर्य है- अपने ऊपर 1. \_\_\_\_\_ रहना। जब मनुष्य अपने कार्य 2. \_\_\_\_\_ करता है तो आत्मनिर्भर कहलाता है। बहुत से कार्य वह दूसरों के 3. \_\_\_\_\_ करता है। आत्मनिर्भरता का अर्थ यह है कि जब किसी कार्य को करने का मन करे, उसके लिए पूर्ण 4. \_\_\_\_\_ और लगन का परिचय दे। स्वयं अपने सहारे उसे सिद्ध करने का 5. \_\_\_\_\_ करें।

**SubQuestion No : 16**

Q.16 रिक्त स्थान 1 की पूर्ति के लिए सबसे उपयुक्त विकल्प का चयन कीजिए।

- Ans
- 1. प्रवृत्ति
  - 2. दूभर
  - 3. सहारा
  - 4. निर्भर

Question ID : 264330111077

Status : Answered

Chosen Option : 4

**Comprehension:**

निम्नलिखित गद्यांश में कुछ शब्दों को हटा दिया गया है। दिए गए विकल्पों की सहायता से रिक्त स्थानों की पूर्ति कीजिए। प्रत्येक संख्या के लिए सबसे उपयुक्त विकल्प का चयन करें।

आत्मनिर्भरता से तात्पर्य है- अपने ऊपर 1. \_\_\_\_\_ रहना। जब मनुष्य अपने कार्य 2. \_\_\_\_\_ करता है तो आत्मनिर्भर कहलाता है। बहुत से कार्य वह दूसरों के 3. \_\_\_\_\_ करता है। आत्मनिर्भरता का अर्थ यह है कि जब किसी कार्य को करने का मन करे, उसके लिए पूर्ण 4. \_\_\_\_\_ और लगन का परिचय दे। स्वयं अपने सहारे उसे सिद्ध करने का 5. \_\_\_\_\_ करें।

**SubQuestion No : 17**

Q.17 रिक्त स्थान 2 की पूर्ति के लिए सबसे उपयुक्त विकल्प का चयन कीजिए।

- Ans
- 1. नहीं
  - 2. स्वयं
  - 3. श्रेष्ठ
  - 4. कल

Question ID : 264330111078

Status : Answered

Chosen Option : 2

**Comprehension:**

निम्नलिखित गद्यांश में कुछ शब्दों को हटा दिया गया है। दिए गए विकल्पों की सहायता से रिक्त स्थानों की पूर्ति कीजिए। प्रत्येक संख्या के लिए सबसे उपयुक्त विकल्प का चयन करें।

आत्मनिर्भरता से तात्पर्य है- अपने ऊपर 1. \_\_\_\_\_ रहना। जब मनुष्य अपने कार्य 2. \_\_\_\_\_ करता है तो आत्मनिर्भर कहलाता है। बहुत से कार्य वह दूसरों के 3. \_\_\_\_\_ करता है। आत्मनिर्भरता का अर्थ यह है कि जब किसी कार्य को करने का मन करे, उसके लिए पूर्ण 4. \_\_\_\_\_ और लगन का परिचय दे। स्वयं अपने सहारे उसे सिद्ध करने का 5. \_\_\_\_\_ करें।

**SubQuestion No : 18**

Q.18 रिक्त स्थान 3 की पूर्ति के लिए सबसे उपयुक्त विकल्प का चयन कीजिए।

- Ans
- 1. स्थिति
  - 2. सहारे
  - 3. लक्ष्य
  - 4. प्रकार

Question ID : 264330111079

Status : Answered

Chosen Option : 2

**Comprehension:**

निम्नलिखित गद्यांश में कुछ शब्दों को हटा दिया गया है। दिए गए विकल्पों की सहायता से रिक्त स्थानों की पूर्ति कीजिए। प्रत्येक संख्या के लिए सबसे उपयुक्त विकल्प का चयन करें।

आत्मनिर्भरता से तात्पर्य है- अपने ऊपर 1. \_\_\_\_\_ रहना। जब मनुष्य अपने कार्य 2. \_\_\_\_\_ करता है तो आत्मनिर्भर कहलाता है। बहुत से कार्य वह दूसरों के 3. \_\_\_\_\_ करता है। आत्मनिर्भरता का अर्थ यह है कि जब किसी कार्य को करने का मन करे, उसके लिए पूर्ण 4. \_\_\_\_\_ और लगन का परिचय दे। स्वयं अपने सहारे उसे सिद्ध करने का 5. \_\_\_\_\_ करें।

**SubQuestion No : 19**

Q.19 रिक्त स्थान 4 की पूर्ति के लिए सबसे उपयुक्त विकल्प का चयन कीजिए।

- Ans
- 1. तत्परता
  - 2. सहायता
  - 3. विफलता
  - 4. अकर्मण्यता

Question ID : 264330111080

Status : Answered

Chosen Option : 1

**Comprehension:**

निम्नलिखित गद्यांश में कुछ शब्दों को हटा दिया गया है। दिए गए विकल्पों की सहायता से रिक्त स्थानों की पूर्ति कीजिए। प्रत्येक संख्या के लिए सबसे उपयुक्त विकल्प का चयन करें।

आत्मनिर्भरता से तात्पर्य है- अपने ऊपर 1. \_\_\_\_\_ रहना। जब मनुष्य अपने कार्य 2. \_\_\_\_\_ करता है तो आत्मनिर्भर कहलाता है। बहुत से कार्य वह दूसरों के 3. \_\_\_\_\_ करता है। आत्मनिर्भरता का अर्थ यह है कि जब किसी कार्य को करने का मन करे, उसके लिए पूर्ण 4. \_\_\_\_\_ और लगन का परिचय दे। स्वयं अपने सहारे उसे सिद्ध करने का 5. \_\_\_\_\_ करें।

**SubQuestion No : 20**

Q.20 रिक्त स्थान 5 की पूर्ति के लिए सबसे उपयुक्त विकल्प का चयन कीजिए।

- Ans
- 1. पाठ
  - 2. प्रयास
  - 3. विकास
  - 4. ध्यान

Question ID : 264330111081

Status : Answered

Chosen Option : 2

KD Job Updates

## Constable GD in CAPFs SSF Rifleman GD in Assam Rifles and Sepoy in NCB Examination 2022

Roll Number	@Qmaths Telegram Channel
Candidate Name	@Qmaths Telegram Channel
Venue Name	iON Digital Zone iDZ Kanti
Exam Date	11/01/2023
Exam Time	9:00 AM - 10:00 AM
Subject	Constable GD Examination 2022

### Section : Part-A-General Intelligence and Reasoning

**Q.1** Six people U, V, W, X, Y, and Z are sitting in a circle facing opposite to the centre. U is sitting third to the right of Y. W is sitting to the immediate left of U. W is sitting third to the left of V. Z is not sitting next to U. Who is sitting between W and Y?

- Ans
- 1. Z
  - 2. X
  - 3. U
  - 4. V

Question ID : 264330114206  
Status : Answered  
Chosen Option : 1

**Q.2** Which option represents the correct order of the given words as they would appear in the English dictionary?

- 1 kind
- 2 kite
- 3 knit
- 4 king
- 5 kindle

- Ans
- 1. 1,5,4,2,3
  - 2. 1,4,2,5,3
  - 3. 1,5,2,4,3
  - 4. 1,4,5,2,3

Question ID : 26433069300  
Status : Answered  
Chosen Option : 1

**Q.3** Which letter-cluster will replace the question mark (?) to complete the given series?  
XCMQ, YDNR, ?, AFPT, BGQU

- Ans
- 1. ZEOR
  - 2. ZEPS
  - 3. ZEUS
  - 4. ZEOS

Question ID : 26433067941  
Status : Answered  
Chosen Option : 4

**Q.4** Three Statements are given followed by Three conclusions numbered I, II and III. Assuming the statements to be true, even if they seem to be at variance with commonly known facts, decide which of the conclusions logically follow(s) from the statements.

Statements:

All bags are rubber.

Some rubber are chairs.

All chairs are tables.

Conclusions:

I. Some rubber are bags.

II. Some chairs are rubber.

III. Some chairs are tables.

- Ans
- 1. Both conclusions I and III follow.
  - 2. Both conclusions I and II follow.
  - 3. All conclusions follow.
  - 4. Both conclusions II and III follow.

Question ID : 26433074639

Status : Answered

Chosen Option : 3

**Q.5** Which of the mathematical signs should be interchanged in the below equation to make it mathematically correct?  
 $144 - 12 + 18 \times 6 \div 24 = 96$

- Ans
- 1. - and +
  - 2. - and  $\times$
  - 3.  $\times$  and +
  - 4. - and +

Question ID : 264330117489

Status : Answered

Chosen Option : 1

**Q.6** 'A + B' means 'B is the brother of A'  
'A - B' means 'B is the sister of A'  
'A % B' means 'B is the daughter of A'  
'A & B' means 'B is the wife of A'  
If A & B % C + D - E, then how is E related to A?

- Ans
- 1. Mother
  - 2. Wife
  - 3. Daughter
  - 4. Sister

Question ID : 26433068529

Status : Answered

Chosen Option : 3

**Q.7** Seven friends are sitting around a circular table facing the centre. T is an immediate neighbour of K and U. S is sitting immediate right of K. W is an immediate neighbour of U and M. Who is sitting third to the left of K?

- Ans
- 1. W
  - 2. M
  - 3. U
  - 4. T

Question ID : 26433080433

Status : Answered

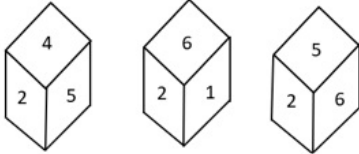
Chosen Option : 1

**Q.8** Which number will replace the question mark (?) in the following series?  
6, 24, 60, 120, ?

- Ans**
- 1. 150
  - 2. 180
  - 3. 135
  - 4. 210

Question ID : 26433067838  
Status : Answered  
Chosen Option : 4

**Q.9** Three different positions of the same dice are shown. Find the number on the face opposite the face showing '2'.



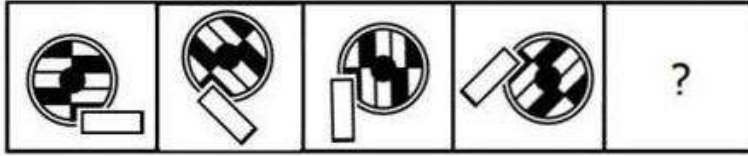
- Ans**
- 1. 5
  - 2. 1
  - 3. 4
  - 4. 3

Question ID : 26433090067  
Status : Answered  
Chosen Option : 4

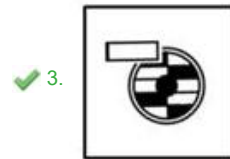
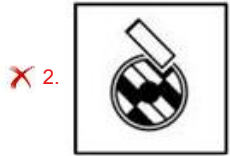
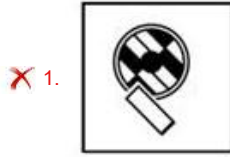
KD Job Updates



Q.10 Select the figure that will come next in the following series.



Ans



Question ID : 26433078969  
Status : Answered  
Chosen Option : 3

Q.11 Select the option that is related to the third word in the same way as the second word is related to the first word. (The words must be considered as meaningful English words and must not be related to each other based on the number of letters/number of consonants/vowels in the word.)  
Kite : Claw :: Horse : ?

- Ans
- ✗ 1. Strong
  - ✗ 2. Fast
  - ✗ 3. Power
  - ✓ 4. Hoof

Question ID : 26433069578  
Status : Answered  
Chosen Option : 4

Q.12 In a certain code language, 'GHOST' is written as 'JCRNW' and 'FIRED' is written as 'IDUZG'. How will 'RIFLE' be written in the same code language?

- Ans
- ✓ 1. UDIGH
  - ✗ 2. VEJFH
  - ✗ 3. PDBGH
  - ✗ 4. UIDBH

Question ID : 26433068145  
Status : Answered  
Chosen Option : 1

Q.13 Select the option that is related to the fifth letter-cluster in the same way as the second letter-cluster is related to the first letter-cluster and the fourth letter-cluster is related to the third letter-cluster.

PAE : HCQ :: ESH: KUF :: FDN : ?

- Ans
- 1. QFG
  - 2. KFG
  - 3. KGP
  - 4. PFH

Question ID : 26433057713  
Status : Answered  
Chosen Option : 1

Q.14 Which letter-cluster will replace the question mark (?) to complete the given series?  
QJKE, SHIG, UFGI, ?, YBCM

- Ans
- 1. WCFM
  - 2. VEFL
  - 3. VDEN
  - 4. WDEK

Question ID : 26433068036  
Status : Answered  
Chosen Option : 4

Q.15 Select the correct mirror image of the given combination when the mirror is placed at 'PQ' as shown below.

G C P U W K



- Ans
- 1. K W U P C G
  - 2. G C P U W K
  - 3. K W U P C G
  - 4. G C P U W K

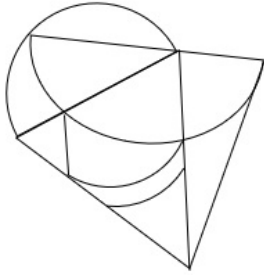
Question ID : 26433081696  
Status : Answered  
Chosen Option : 1

Q.16 In a certain code language, 'SLOWLY' is written as 'TMNXMZ' and 'FRIEND' is written as 'GSHDOE'. How will 'BORING' be written in that language?

- Ans
- 1. CPSNOH
  - 2. CNSHOH
  - 3. CNSJOH
  - 4. CNSHOF

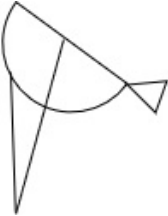
Question ID : 26433081760  
Status : Answered  
Chosen Option : 2

Q.17 Select the option figure which is embedded in the given figure. (Rotation is NOT allowed)

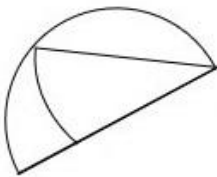


Ans

✗ 1.



✓ 2.



✗ 3.



✗ 4.



Question ID : 26433069331  
Status : Answered  
Chosen Option : 2

Q.18 Which of the following numbers will replace the question mark (?) in the given series?  
62498, 61874, ?, 60644, 60038, 59438

Ans ✓ 1. 61256

✗ 2. 61656

✗ 3. 60544

✗ 4. 60446

Question ID : 26433076751  
Status : Answered  
Chosen Option : 1

Q.19 Select the set in which the numbers are related in the same way as are the numbers of the following sets.

(NOTE : Operations should be performed on the whole numbers, without breaking down the numbers into its constituent digits. E.g. 13 – Operations on 13 such as adding/subtracting/multiplying etc. to 13 can be performed. Breaking down 13 into 1 and 3 and then performing mathematical operations on 1 and 3 is not allowed)

(11, 78, 15)

(12, 90, 18)

- Ans
- 1. (12, 89, 17)
  - 2. (11, 91, 19)
  - 3. (13, 96, 19)
  - 4. (10, 54, 17)

Question ID : 26433076541  
Status : Answered  
Chosen Option : 1

Q.20 Select the correct combination of mathematical signs to sequentially replace the \* signs and to balance the given equation.

$10 * 18 * 19 * 2 * 1 * 217$

- Ans
- 1.  $\times, +, \times, +, =$
  - 2.  $\times, +, \times, -, =$
  - 3.  $\times, +, -, -, =$
  - 4.  $+, +, \times, -, =$

Question ID : 26433082881  
Status : Answered  
Chosen Option : 2

Section : Part-B-General Knowledge and General awareness

Q.1 Government of India has approved a new Central Sector Scheme entitled "National Beekeeping & Honey Mission (NBHM)" which is associated to \_\_\_\_\_ revolution.

- Ans
- 1. savoury
  - 2. sweet
  - 3. honey
  - 4. golden

Question ID : 264330116185  
Status : Answered  
Chosen Option : 3

Q.2 \_\_\_\_\_ are a narrow belt of high altitude (above 12,000 m) westerly winds in the troposphere. Their speed varies from about 110 km/h in summer to about 184 km/h in winter.

- Ans
- 1. Jet Streams
  - 2. Whirlwind
  - 3. Derecho
  - 4. Hurricane

Question ID : 264330115978  
Status : Not Answered  
Chosen Option : --

Q.3 After independence, India launched its First five year plan in \_\_\_\_\_.

- Ans  1. 1952  
 2. 1953  
 3. 1950  
 4. 1951

Question ID : 264330116134  
Status : Answered  
Chosen Option : 1

Q.4 Which Indian dancer among the following was the Youngest recipient of Padma Vibhushan in 2003?

- Ans  1. Uday Shankar  
 2. Sonal Mansingh  
 3. Pandit Birju Maharaj  
 4. Kelucharan Mohapatra

Question ID : 264330115839  
Status : Not Answered  
Chosen Option : --

Q.5 What is the chemical formula of Calcium Carbonate?

- Ans  1.  $\text{CaSO}_4$   
 2.  $\text{CaCO}_3$   
 3.  $\text{CaCO}_2$   
 4.  $\text{CaO}$

Question ID : 264330115166  
Status : Answered  
Chosen Option : 3

Q.6 Which vitamin is also known as Thiamin?

- Ans  1. Vitamin B2  
 2. Vitamin B3  
 3. Vitamin B1  
 4. Vitamin B12

Question ID : 264330115222  
Status : Answered  
Chosen Option : 3

Q.7 Who took oath as the Governor of Meghalaya in October 2022?

- Ans  1. Banwarilal Purohit  
 2. Tathagata Roy  
 3. Satya Pal Malik  
 4. B. D. Mishra

Question ID : 264330114979  
Status : Answered  
Chosen Option : 2

Q.8 Gandhi-Irwin pact was signed in which year?

- Ans  1. 1931  
 2. 1935  
 3. 1929  
 4. 1933

Question ID : 264330115685  
Status : Answered  
Chosen Option : 1

Q.9 एक बजट दस्तावेज, जो किसी विशेष वित्तीय वर्ष के लिए सरकार की राजस्व प्राप्तियों और राजस्व व्यय से संबंधित होता है, \_\_\_\_\_ कहलाता है।

- Ans  1. राजस्व बजट  
 2. शून्य बजट  
 3. दीर्घकालिक बजट  
 4. पूंजीगत बजट

Question ID : 264330115276  
Status : Not Attempted and Marked For Review  
Chosen Option : --

Q.10 The last article of the Constitution of India has been given the number \_\_\_\_\_ (as on May 2022).

- Ans  1. 380  
 2. 390  
 3. 395  
 4. 385

Question ID : 264330115611  
Status : Answered  
Chosen Option : 3

Q.11 As of November 2022, who is the Union Minister for Education in India?

- Ans  1. Dharmendra Pradhan  
 2. Mansukh Mandaviya  
 3. Anurag Thakur  
 4. Kiren Rijju

Question ID : 264330114931  
Status : Answered  
Chosen Option : 1

Q.12 Which union territory has the highest sex ratio as per the 2011 Census?

- Ans  1. Lakshwadeep  
 2. Puducherry  
 3. Daman & Diu  
 4. Chandigarh

Question ID : 264330116048  
Status : Answered  
Chosen Option : 1

Q.13 \_\_\_\_\_ is celebrated as Gujarati New Year in India.

- Ans  1. Bestu Varas  
 2. Vishu  
 3. Losar  
 4. Losoong

Question ID : 264330115107  
Status : Answered  
Chosen Option : 2

Q.14 Primary raw material for sugar industry is \_\_\_\_\_.

- Ans  1. chemical sweetners  
 2. sweet potato  
 3. apple  
 4. sugar cane

Question ID : 264330115395  
Status : Answered  
Chosen Option : 4

Q.15 Which among the following classical dance forms was introduced in the 16th century by Vaishnava saint Mahapurusha Sankaradeva?

- Ans  1. Kuchipudi  
 2. Sattriya  
 3. Odissi  
 4. Manipuri

Question ID : 264330115062  
Status : Not Answered  
Chosen Option : --

Q.16 In which city is the Mohun Bagan Athletic club situated?

- Ans  1. Jaipur  
 2. Kolkata  
 3. Lucknow  
 4. Bulandshahr

Question ID : 26433092324  
Status : Not Answered  
Chosen Option : --

Q.17 Who hosted the FIFA World Cup 2022?

- Ans  1. Brazil  
 2. Qatar  
 3. Spain  
 4. Germany

Question ID : 264330115926  
Status : Answered  
Chosen Option : 2

Q.18 Removal of president of the country from the office is known as \_\_\_\_\_.

- Ans  1. Impeachment  
 2. Termination of Services  
 3. Resignation  
 4. Voluntary Retirement from services

Question ID : 264330115666  
Status : Answered  
Chosen Option : 1

Q.19 Who among the following Greek rulers sent Megasthenes to the court of Chandragupta Maurya?

- Ans  1. Seleucus Nicator  
 2. Amyntas II  
 3. Amyntas III  
 4. Phillip II

Question ID : 26433090574  
Status : Answered  
Chosen Option : 2

Q.20 विरासत का अधिकार (right of inheritance) किस ओर ले जाता है?

- Ans  1. अनुपजाऊ भूमि  
 2. भूमि प्रदूषण  
 3. भूमि का विभाजन  
 4. भूमि की कमी

Question ID : 264330115523  
Status : Answered  
Chosen Option : 3

Section : Part-C-Elementary Mathematics

Q.1 Manish bought an air conditioner for Rs.46,875, its value is depreciating at the rate of 8% yearly. What will be the price of the air conditioner after 3 years?

- Ans  1. Rs.33,786  
 2. Rs.32,245  
 3. Rs.36,501  
 4. Rs.35,602

Question ID : 26433080339  
Status : Answered  
Chosen Option : 4

Q.2 एक व्यक्ति पहले दिन पर 6 घंटे में 240 kms, दूसरे दिन पर 8 घंटे में 360 kms और तीसरे दिन पर 6 घंटे में 450 kms की दूरी पूरी करता है। 3 दिनों में उसके द्वारा पूरी की गई प्रति घंटे की औसत दूरी ज्ञात करें।

- Ans  1. 52.5 kms  
 2. 50.5 kms  
 3. 51 kms  
 4. 48 kms

Question ID : 264330116683  
Status : Answered  
Chosen Option : 3



**Q.3** An increase of 25 percent in the price of onions enables a woman to buy 5 kg less for Rs. 200. The increased price of onions per kg is:

- Ans
- 1. Rs. 5 per kg
  - 2. Rs. 8 per kg
  - 3. Rs. 10 per kg
  - 4. Rs. 15 per kg

Question ID : 264330116789  
Status : Answered  
Chosen Option : 3

**Q.4** A person travels in a car for 600 km at an average speed of 50 km/h and 100 km at 100 km/h, and finally reaches his destination by travelling 50 km at a speed of 25 km/h. Determine the average speed during the whole journey.

- Ans
- 1. 50 km/h
  - 2. 75 km/h
  - 3. 58.33 km/h
  - 4. 25 km/h

Question ID : 26433071334  
Status : Answered  
Chosen Option : 1

**Q.5** There are 90 female members and 60 male members in a club. If the average age of female members is 35 years, and the average age of male members is 45 years, then find the average age (in years) of the whole club?

- Ans
- 1. 39
  - 2. 36
  - 3. 40
  - 4. 47

Question ID : 26433082705  
Status : Answered  
Chosen Option : 1

**Q.6** The difference between the two numbers is 15% of their sum. Find the ratio of the smaller number to the larger number.

- Ans
- 1.  $\frac{13}{17}$
  - 2.  $\frac{17}{13}$
  - 3.  $\frac{17}{23}$
  - 4.  $\frac{23}{17}$

Question ID : 26433080366  
Status : Answered  
Chosen Option : 3

**Q.7** The radius of a cone is 5 cm and its slant height is 16 cm. It's total surface area (in  $\text{cm}^2$ ) will be:

- Ans  1. 330  
 2. 300  
 3. 310  
 4. 320

Question ID : 26433085772  
Status : Answered  
Chosen Option : 1

**Q.8** Ruby bought 20 buttons for Rs.1. How many buttons she must sell for Rs.1 in order to get a profit of 25%?

- Ans  1. 15  
 2. 17  
 3. 14  
 4. 16

Question ID : 26433080304  
Status : Answered  
Chosen Option : 4

**Q.9** In a proportion, the product of the 1<sup>st</sup> and 4<sup>th</sup> term is 70 and that of 2<sup>nd</sup> and 3<sup>rd</sup> term is  $3.5x$ . The value of  $x$  is:

- Ans  1. 21  
 2. 35  
 3. 2  
 4. 20

Question ID : 26433074931  
Status : Answered  
Chosen Option : 4

**Q.10** A and B together can do a piece of the work in 50 hours, B and C together can do the same work in 75 hours and A and C together can do the same in 25 hours. Find the time in which A, B, and C together will complete the task.

- Ans  1.  $400/11$  hours  
 2.  $150/11$  hours  
 3.  $131/11$  hours  
 4.  $300/11$  hours

Question ID : 264330116869  
Status : Answered  
Chosen Option : 4

**Q.11** Find the difference between the greatest and the smallest 4-digit numbers exactly divisible by 36 and 48.

- Ans  1. 8928  
 2. 8892  
 3. 8298  
 4. 8982

Question ID : 264330116648  
Status : Answered  
Chosen Option : 1

Q.12 If machine A and B can produce 1100 units in 9 h and 12 h respectively. In how many hours can machine A and B working together at these constant rates produce 1100 units?

Ans

✓ 1.  $\frac{36}{7}$

✗ 2.  $\frac{37}{7}$

✗ 3.  $\frac{39}{7}$

✗ 4.  $\frac{38}{7}$

Question ID : 26433074312

Status : Answered

Chosen Option : 1

Q.13 Robin travels one-fourth of the distance at 20 km/h, another one-fourth at 10 km/h, and the remaining distance at 80 km/h. Find Robin's average speed for the entire distance (correct to 2 decimal places)?

Ans

✗ 1. 25 km/h

✓ 2. 22.86 km/h

✗ 3. 20 km/h

✗ 4. 18.2 km/h

Question ID : 26433065292

Status : Answered

Chosen Option : 2

Q.14 The marked price of an item was Rs. 100000, but the shopkeeper offered a double discount of 20 percent and 10 percent. At what price did he finally sell the item?

Ans

✓ 1. Rs. 72000

✗ 2. Rs. 80000

✗ 3. Rs. 70000

✗ 4. Rs. 82000

Question ID : 264330116754

Status : Answered

Chosen Option : 1

Q.15 If  $2^{305} + 303$  is divided by 9, then the remainder is:

Ans

✓ 1. 2

✗ 2. 4

✗ 3. 6

✗ 4. 1

Question ID : 26433079904

Status : Answered

Chosen Option : 1

Q.16 A chair is bought for ₹800 and sold for ₹1,100. Find the gain percentage.

- Ans
- 1. 40%
  - 2. 30%
  - 3. 37.5%
  - 4. 32.3%

Question ID : 26433074276  
Status : Answered  
Chosen Option : 3

Q.17 The curved surface area of right circular cylinder of height 14 cm is  $110\text{ cm}^2$ . What is the base diameter of the cylinder?

(Use  $\pi = \frac{22}{7}$ )

- Ans
- 1. 2.7 cm
  - 2. 2.4 cm
  - 3. 2.5 cm
  - 4. 2.6 cm

Question ID : 26433079779  
Status : Answered  
Chosen Option : 3

Q.18 The marked price on an item was Rs 2000/- but the shopkeeper offered a discount of 20 percent. How much did he finally sell the item for?

- Ans
- 1. Rs.1400
  - 2. Rs. 1200
  - 3. Rs. 1500
  - 4. Rs. 1600

Question ID : 264330116715  
Status : Answered  
Chosen Option : 4

Q.19 In how many years will ₹800 amount to ₹926.10 at 10% per annum, compounded half-yearly?

- Ans
- 1. 3
  - 2. 2
  - 3. 2.5
  - 4. 1.5

Question ID : 26433082403  
Status : Answered  
Chosen Option : 1

Q.20 If  $a + b = 25$  and  $a - b = 7$ , then determine the mean proportion of a and b.

- Ans
- 1. 12
  - 2. 15
  - 3. 6
  - 4. 9

Question ID : 26433080114  
Status : Answered  
Chosen Option : 1

Q.1 Select the most appropriate ANTONYM of the given word.

Compassionate

- Ans  1. Likeable  
 2. Merciful  
 3. Cruel  
 4. Fashionable

Question ID : 26433072211  
Status : Answered  
Chosen Option : 3

Q.2 Select the most appropriate synonym for the underlined word in the given sentence.

An oxygen cylinder is used to deliver oxygen through the patient's nasal orifice.

- Ans  1. origin  
 2. ornate  
 3. ordained  
 4. opening

Question ID : 26433073754  
Status : Answered  
Chosen Option : 2

Q.3 Select the most appropriate ANTONYM of the given word.

Feeble

- Ans  1. Anxious  
 2. Weak  
 3. Sturdy  
 4. Curious

Question ID : 26433073918  
Status : Answered  
Chosen Option : 3

Q.4 The sentence below is divided into four segments. Select the option that has an error of tense.

I has been / visiting my / family and relatives / during the winter vacation.

- Ans  1. during the winter vacation  
 2. family and relatives  
 3. visiting my  
 4. I has been

Question ID : 26433092945  
Status : Answered  
Chosen Option : 4

**Q.5** Select the most appropriate option that can substitute the underlined segment in the given sentence.

My uncle has an extremely large bungalow which has six bedrooms, five bathrooms and four living rooms.

- Ans
- 1. enormous
  - 2. meagre
  - 3. great
  - 4. oversize

Question ID : 26433086460  
Status : Answered  
Chosen Option : 1

**Q.6** Select the most appropriate meaning of the underlined idiom in the given sentence.

Siraj-ud Daula's defeat can be attributed to a snake in the grass.

- Ans
- 1. A devoted attendant
  - 2. A disloyal soldier
  - 3. A deceitful person
  - 4. A coiled serpent

Question ID : 26433071996  
Status : Answered  
Chosen Option : 3

**Q.7** Select the most appropriate option to fill in the blank.

He is an absolutely \_\_\_\_\_ man.

- Ans
- 1. chased
  - 2. chaste
  - 3. chest
  - 4. crazed

Question ID : 26433090388  
Status : Answered  
Chosen Option : 2

**Q.8** Select the most appropriate ANTONYM of the bracketed word to fill in the blank.

The medicine was so \_\_\_\_\_ (sweet) that a man had to choose sugar along with it.

- Ans
- 1. rancid
  - 2. sour
  - 3. stale
  - 4. fetid

Question ID : 26433060720  
Status : Answered  
Chosen Option : 4

**Q.9** Select the option in which all the words are spelt correctly.

- Ans
- 1. The sage preached that we are accountable to God in this life.
  - 2. The sage preached that we are akountable to God in this life.
  - 3. The sage preached that we are accuuntable to God in this life.
  - 4. The sage preached that we are accountable to God in this life.

Question ID : 26433072287  
Status : Answered  
Chosen Option : 1

Q.10 Select the most appropriate option to fill in the blank.

He indeed is intelligent who \_\_\_\_\_ this and succeeds in making all work truly great.

- Ans
- 1. was noticed
  - 2. noticed
  - 3. notices
  - 4. noticing

Question ID : 26433088957  
Status : Answered  
Chosen Option : 3

Q.11 Select the INCORRECTLY spelt word.

- Ans
- 1. Skulptor
  - 2. Miraculous
  - 3. Vision
  - 4. Succeed

Question ID : 26433073733  
Status : Answered  
Chosen Option : 1

Q.12 Select the most appropriate synonym of the given word.

Ideal

- Ans
- 1. Excellent
  - 2. Hefty
  - 3. Bad
  - 4. Intact

Question ID : 26433088925  
Status : Answered  
Chosen Option : 4

Q.13 Select the most appropriate option that can substitute the underlined segment in the given sentence. If there is no need to substitute it, select 'No substitution'.  
I visited the hospital to enquire about eyes surgery.

- Ans
- 1. enquire about eye surgery
  - 2. enquire for eyes surgery
  - 3. enquired about eye surgery
  - 4. No substitution

Question ID : 26433093072  
Status : Answered  
Chosen Option : 2

Q.14 Select the most appropriate meaning of the given idiom.

To call in question

- Ans
- 1. Show indifference
  - 2. Take a resolute stand
  - 3. Challenge
  - 4. Dislike the arrangement

Question ID : 26433073874  
Status : Not Answered  
Chosen Option : --

**Q.15 Complete the sentence using correct pair of words from the options given.**

**My brother \_\_\_\_\_ apples during his fast.**

- Ans**  1. ate; eight  
 2. eight; eight  
 3. ate; ate  
 4. eight; ate

Question ID : 26433088870  
Status : Answered  
Chosen Option : 1

**Comprehension:**

In the following passage, some words have been deleted. Read the passage carefully and select the most appropriate option to fill in each blank.

One certain benefit of online communication either through email or even communicating through WhatsApp nowadays is that there is a (1) \_\_\_\_\_ dependence on paper. It is said that to make a ton of paper 17 trees have to be cut down. With the already existing demand for paper to meet (2) \_\_\_\_\_ needs, it would be horrendous to keep (3) \_\_\_\_\_ the demand for paper worldwide. Online communication is a boon as many documents are now sent by mail through PDF, Microsoft Word or the JPEG format. This means that there is certainly a (4) \_\_\_\_\_ in the use of paper due to online communication. Many people read online newspapers nowadays, which means there is a decline in the number of people buying offline versions of (5) \_\_\_\_\_.

**SubQuestion No : 16**

**Q.16 Select the most appropriate option to fill in blank number 1.**

- Ans**  1. restless  
 2. crest  
 3. less  
 4. dress

Question ID : 26433088749  
Status : Answered  
Chosen Option : 3

**Comprehension:**

In the following passage, some words have been deleted. Read the passage carefully and select the most appropriate option to fill in each blank.

One certain benefit of online communication either through email or even communicating through WhatsApp nowadays is that there is a (1) \_\_\_\_\_ dependence on paper. It is said that to make a ton of paper 17 trees have to be cut down. With the already existing demand for paper to meet (2) \_\_\_\_\_ needs, it would be horrendous to keep (3) \_\_\_\_\_ the demand for paper worldwide. Online communication is a boon as many documents are now sent by mail through PDF, Microsoft Word or the JPEG format. This means that there is certainly a (4) \_\_\_\_\_ in the use of paper due to online communication. Many people read online newspapers nowadays, which means there is a decline in the number of people buying offline versions of (5) \_\_\_\_\_.

**SubQuestion No : 17**

**Q.17 Select the most appropriate option to fill in blank number 2.**

- Ans**  1. controversial  
 2. various  
 3. rare  
 4. handle

Question ID : 26433088750  
Status : Answered  
Chosen Option : 2



**Comprehension:**

In the following passage, some words have been deleted. Read the passage carefully and select the most appropriate option to fill in each blank.

One certain benefit of online communication either through email or even communicating through WhatsApp nowadays is that there is a (1) \_\_\_\_\_ dependence on paper. It is said that to make a ton of paper 17 trees have to be cut down. With the already existing demand for paper to meet (2) \_\_\_\_\_ needs, it would be horrendous to keep (3) \_\_\_\_\_ the demand for paper worldwide. Online communication is a boon as many documents are now sent by mail through PDF, Microsoft Word or the JPEG format. This means that there is certainly a (4) \_\_\_\_\_ in the use of paper due to online communication. Many people read online newspapers nowadays, which means there is a decline in the number of people buying offline versions of (5) \_\_\_\_\_.

**SubQuestion No : 18**

**Q.18 Select the most appropriate option to fill in blank number 3.**

- Ans**  1. planning  
 2. increasing  
 3. contriving  
 4. depriving

Question ID : 26433088751  
Status : Answered  
Chosen Option : 4

**Comprehension:**

In the following passage, some words have been deleted. Read the passage carefully and select the most appropriate option to fill in each blank.

One certain benefit of online communication either through email or even communicating through WhatsApp nowadays is that there is a (1) \_\_\_\_\_ dependence on paper. It is said that to make a ton of paper 17 trees have to be cut down. With the already existing demand for paper to meet (2) \_\_\_\_\_ needs, it would be horrendous to keep (3) \_\_\_\_\_ the demand for paper worldwide. Online communication is a boon as many documents are now sent by mail through PDF, Microsoft Word or the JPEG format. This means that there is certainly a (4) \_\_\_\_\_ in the use of paper due to online communication. Many people read online newspapers nowadays, which means there is a decline in the number of people buying offline versions of (5) \_\_\_\_\_.

**SubQuestion No : 19**

**Q.19 Select the most appropriate option to fill in blank number 4.**

- Ans**  1. traction  
 2. reduction  
 3. induction  
 4. gumption

Question ID : 26433088752  
Status : Answered  
Chosen Option : 2

**Comprehension:**

In the following passage, some words have been deleted. Read the passage carefully and select the most appropriate option to fill in each blank.

One certain benefit of online communication either through email or even communicating through WhatsApp nowadays is that there is a (1) \_\_\_\_\_ dependence on paper. It is said that to make a ton of paper 17 trees have to be cut down. With the already existing demand for paper to meet (2) \_\_\_\_\_ needs, it would be horrendous to keep (3) \_\_\_\_\_ the demand for paper worldwide. Online communication is a boon as many documents are now sent by mail through PDF, Microsoft Word or the JPEG format. This means that there is certainly a (4) \_\_\_\_\_ in the use of paper due to online communication. Many people read online newspapers nowadays, which means there is a decline in the number of people buying offline versions of (5) \_\_\_\_\_.

**SubQuestion No : 20**

**Q.20** Select the most appropriate option to fill in blank number 5.

- Ans  1. fliers  
 2. magazines  
 3. newspapers  
 4. canvas

Question ID : 26433088753  
Status : Answered  
Chosen Option : 3

**Section : Part-D-Hindi**

**Q.1** विकल्पों में से निम्नलिखित वाक्यांश के लिए उपयुक्त शब्द चुनें।  
जो इंद्रियों से परे हो

- Ans  1. अतींद्रिय  
 2. ज्ञानेन्द्रिय  
 3. जितेन्द्रिय  
 4. कर्मेन्द्रिय

Question ID : 26433069992  
Status : Not Answered  
Chosen Option : --

**Q.2** निम्नलिखित वाक्य के रेखांकित अंश के स्थान पर विकल्पों में सबसे उपयुक्त शब्द का चयन कीजिए।  
शोक है कि मैं आपके पत्र का उत्तर नहीं दे सका।

- Ans  1. पता  
 2. खुशी  
 3. कष्ट  
 4. खेद

Question ID : 26433066868  
Status : Not Answered  
Chosen Option : --

**Q.3** 'गंगा नदी भारत देश में हजारों लोगों की जीवनदायिनी है।' निम्नलिखित में से कौन सा शब्द 'गंगा' का पर्यायवाची शब्द नहीं है।

- Ans  1. हंसजा  
 2. देवपगा  
 3. विष्णुपदी  
 4. सुरसरिता

Question ID : 26433069737  
Status : Not Answered  
Chosen Option : --

Q.4 सिंह की सवारी सबके बस की बात नहीं है।  
उस विकल्प का चयन कीजिए जो उपरोक्त वाक्य में रेखांकित शब्द का पर्यायवाची शब्द नहीं है।

- Ans
- 1. सिंह
  - 2. केसरी
  - 3. मणि
  - 4. वनराज

Question ID : 26433091341  
Status : Not Answered  
Chosen Option : --

Q.5 'सारे शरीर की हड्डियों का ढांचा' वाक्यांश के लिए सार्थक शब्द है-

- Ans
- 1. शरीर की हड्डियां
  - 2. कंकाल
  - 3. हड्डी का ढांचा
  - 4. मांसपेशी

Question ID : 26433062224  
Status : Not Answered  
Chosen Option : --

Q.6 'जो कहा गया है' वाक्यांश के लिए सार्थक शब्द है-

- Ans
- 1. अकथ्य
  - 2. कल्पित
  - 3. कथित
  - 4. वचनातीत

Question ID : 26433065864  
Status : Not Answered  
Chosen Option : --

Q.7 निम्नलिखित में से अशुद्ध वाक्य कौन-सा है?

- Ans
- 1. कोयल पेड़ में बैठी है।
  - 2. अंजना ने नई साड़ी खरीदी।
  - 3. वसुंधरा बहुत सुरीला गायी है।
  - 4. सुमेध आज छुट्टी पर है।

Question ID : 26433066989  
Status : Not Answered  
Chosen Option : --

Q.8 'आफिसर ने कर्मचारी को फ़ाइल लाने का आदेश दिया।' इस वाक्य में प्रयुक्त 'आदेश' शब्द का अर्थ क्या है?

- Ans
- 1. छोटों को बहकाना
  - 2. आज्ञा पालन के लिए कहना
  - 3. अपने कर्मचारियों की अवज्ञा करना
  - 4. अपने से छोटों को डांटना

Question ID : 26433080915  
Status : Not Answered  
Chosen Option : --

Q.9 निम्न विकल्पों में से अशुद्ध वाक्य छाँटिए।

- Ans  1. लड़की पुस्तक पढ़ती है।  
 2. लड़के ने घर जाना है।  
 3. मुझे उस पर दया आती है।  
 4. शीला को नाटक अच्छा लगा।

Question ID : 26433063035  
Status : Not Answered  
Chosen Option : --

Q.10 'निरक्षर' शब्द का विलोम क्या होगा?

- Ans  1. अपढ़  
 2. महान  
 3. अनपढ़  
 4. साक्षर

Question ID : 26433067090  
Status : Not Answered  
Chosen Option : --

Q.11 निम्नलिखित वाक्य के किस भाग में वर्तनी सम्बन्धी त्रुटि है?  
'आजकल दिल्ली के प्रगति मैदान में हस्तशिल्प प्रदर्शिनी चल रही है।'

- Ans  1. प्रगति मैदान में  
 2. आजकल दिल्ली के  
 3. हस्तशिल्प प्रदर्शिनी  
 4. चल रही है।

Question ID : 26433063025  
Status : Not Answered  
Chosen Option : --

Q.12 मुहावरों और उनके अर्थ का निम्नलिखित में से कौन सा युग्म सही है?

- Ans  1. दाल न गलना-पूरा बस चलना  
 2. दिन का फेर होना-दिनभर भटकते रहना  
 3. त्रिशंकु होना-अधर में लटकते रहना  
 4. दो दिन का मेहमान-लम्बे समय तक जीना

Question ID : 26433062559  
Status : Not Answered  
Chosen Option : --

Q.13 तब की बात कुछ और थी। फिर ऐसा नहीं होगा।  
उपरोक्त वाक्य में प्रयुक्त 'तब', 'फिर' समानार्थक क्रिया-विशेषणों के सही अर्थ क्या हैं?

- Ans  1. 'तब' का अर्थ बाद में और 'फिर' का अर्थ बार – बार  
 2. 'तब' का अर्थ उस समय और 'फिर' का अर्थ दुबारा  
 3. 'तब' का अर्थ उस समय और 'फिर' का अर्थ अलग  
 4. 'तब' का अर्थ कहाँ और 'फिर' का अर्थ वर्तमान

Question ID : 26433079232  
Status : Not Answered  
Chosen Option : --

Q.14 निम्नलिखित वाक्य के किस भाग में शब्द-चयन सम्बन्धी अशुद्धि है?  
'हिन्दी के प्रचार में बहुत बड़े-बड़े संकट हैं।'

- Ans  1. बड़े-बड़े संकट हैं।  
 2. बहुत  
 3. प्रचार में  
 4. हिन्दी के

Question ID : 26433062806  
Status : Not Answered  
Chosen Option : --

Q.15 निम्नलिखित मुहावरे के लिए उपयुक्त सार्थक शब्द है-  
टका-सा जवाब देना

- Ans  1. साफ इंकार करना  
 2. हिचकना  
 3. बहाना करना  
 4. लालच देना

Question ID : 26433065771  
Status : Not Answered  
Chosen Option : --

**Comprehension:**

निम्नलिखित गद्यांश में कुछ शब्दों को हटा दिया गया है। दिए गए विकल्पों की सहायता से रिक्त स्थानों की पूर्ति कीजिए। प्रत्येक संख्या के लिए सबसे उपयुक्त विकल्प का चयन करें।

वैसे तो सभी आयु-वर्ग के लोग अपने-अपने जन्मदिन 1. \_\_\_\_\_ मनाते हैं, पर बच्चों में इस दिन को मनाने की उत्सुकता कुछ 2. \_\_\_\_\_ ही होती है। पूरे वर्ष वे इस दिन की 3. \_\_\_\_\_ करते रहते हैं। जब भी किसी के जन्मदिन में 4. \_\_\_\_\_ होते हैं लौटकर ज़रूर पूछते हैं कि हमारा जन्मदिन कब मनाया जाएगा। जन्मदिन पर घर को सजाया जाता है। इस दिन सभी मित्र 5. \_\_\_\_\_ होते हैं।

**SubQuestion No : 16**

Q.16 रिक्त स्थान 1 की पूर्ति के लिए सबसे उपयुक्त विकल्प का चयन कीजिए।

- Ans  1. उत्सुकता  
 2. प्रसन्नतापूर्वक  
 3. स्वाभाविक  
 4. रोज़

Question ID : 264330111083  
Status : Not Answered  
Chosen Option : --

**Comprehension:**

निम्नलिखित गद्यांश में कुछ शब्दों को हटा दिया गया है। दिए गए विकल्पों की सहायता से रिक्त स्थानों की पूर्ति कीजिए। प्रत्येक संख्या के लिए सबसे उपयुक्त विकल्प का चयन करें।

वैसे तो सभी आयु-वर्ग के लोग अपने-अपने जन्मदिन 1. \_\_\_\_\_ मनाते हैं, पर बच्चों में इस दिन को मनाने की उत्सुकता कुछ 2. \_\_\_\_\_ ही होती है। पूरे वर्ष वे इस दिन की 3. \_\_\_\_\_ करते रहते हैं। जब भी किसी के जन्मदिन में 4. \_\_\_\_\_ होते हैं लौटकर ज़रूर पूछते हैं कि हमारा जन्मदिन कब मनाया जाएगा। जन्मदिन पर घर को सजाया जाता है। इस दिन सभी मित्र 5. \_\_\_\_\_ होते हैं।

**SubQuestion No : 17**

Q.17 रिक्त स्थान 2 की पूर्ति के लिए सबसे उपयुक्त विकल्प का चयन कीजिए।

- Ans  1. अधिक  
 2. प्रायः  
 3. हमेशा  
 4. कम

Question ID : 264330111084  
Status : Not Answered  
Chosen Option : --

**Comprehension:**

निम्नलिखित गद्यांश में कुछ शब्दों को हटा दिया गया है। दिए गए विकल्पों की सहायता से रिक्त स्थानों की पूर्ति कीजिए। प्रत्येक संख्या के लिए सबसे उपयुक्त विकल्प का चयन करें।

वैसे तो सभी आयु-वर्ग के लोग अपने-अपने जन्मदिन 1. \_\_\_\_\_ मनाते हैं, पर बच्चों में इस दिन को मनाने की उत्सुकता कुछ 2. \_\_\_\_\_ ही होती है। पूरे वर्ष वे इस दिन की 3. \_\_\_\_\_ करते रहते हैं। जब भी किसी के जन्मदिन में 4. \_\_\_\_\_ होते हैं लौटकर ज़रूर पूछते हैं कि हमारा जन्मदिन कब मनाया जाएगा। जन्मदिन पर घर को सजाया जाता है। इस दिन सभी मित्र 5. \_\_\_\_\_ होते हैं।

**SubQuestion No : 18**

Q.18 रिक्त स्थान 3 की पूर्ति के लिए सबसे उपयुक्त विकल्प का चयन कीजिए।

- Ans  1. प्रतीक्षा  
 2. सहायता  
 3. विकसित  
 4. सार्थकता

Question ID : 264330111085  
Status : Not Answered  
Chosen Option : --

**Comprehension:**

निम्नलिखित गद्यांश में कुछ शब्दों को हटा दिया गया है। दिए गए विकल्पों की सहायता से रिक्त स्थानों की पूर्ति कीजिए। प्रत्येक संख्या के लिए सबसे उपयुक्त विकल्प का चयन करें।

वैसे तो सभी आयु-वर्ग के लोग अपने-अपने जन्मदिन 1. \_\_\_\_\_ मनाते हैं, पर बच्चों में इस दिन को मनाने की उत्सुकता कुछ 2. \_\_\_\_\_ ही होती है। पूरे वर्ष वे इस दिन की 3. \_\_\_\_\_ करते रहते हैं। जब भी किसी के जन्मदिन में 4. \_\_\_\_\_ होते हैं लौटकर ज़रूर पूछते हैं कि हमारा जन्मदिन कब मनाया जाएगा। जन्मदिन पर घर को सजाया जाता है। इस दिन सभी मित्र 5. \_\_\_\_\_ होते हैं।

**SubQuestion No : 19**

Q.19 रिक्त स्थान 4 की पूर्ति के लिए सबसे उपयुक्त विकल्प का चयन कीजिए।

- Ans  1. सामाजिक  
 2. अभिव्यक्त  
 3. विचलित  
 4. सम्मिलित

Question ID : 264330111086  
Status : Not Answered  
Chosen Option : --

**Comprehension:**

निम्नलिखित गद्यांश में कुछ शब्दों को हटा दिया गया है। दिए गए विकल्पों की सहायता से रिक्त स्थानों की पूर्ति कीजिए। प्रत्येक संख्या के लिए सबसे उपयुक्त विकल्प का चयन करें।

वैसे तो सभी आयु-वर्ग के लोग अपने-अपने जन्मदिन 1. \_\_\_\_\_ मनाते हैं, पर बच्चों में इस दिन को मनाने की उत्सुकता कुछ 2. \_\_\_\_\_ ही होती है। पूरे वर्ष वे इस दिन की 3. \_\_\_\_\_ करते रहते हैं। जब भी किसी के जन्मदिन में 4. \_\_\_\_\_ होते हैं लौटकर ज़रूर पूछते हैं कि हमारा जन्मदिन कब मनाया जाएगा। जन्मदिन पर घर को सजाया जाता है। इस दिन सभी मित्र 5. \_\_\_\_\_ होते हैं।

**SubQuestion No : 20**

**Q.20** रिक्त स्थान 5 की पूर्ति के लिए सबसे उपयुक्त विकल्प का चयन कीजिए।

- Ans**
- 1. प्रेरणा
  - 2. संबंधित
  - 3. एकत्रित
  - 4. प्रसिद्धि

Question ID : 264330111087

Status : Not Answered

Chosen Option : --

KD Job Updates

# Constable GD in CAPFs SSF Rifleman GD in Assam Rifles and Sepoy in NCB Examination 2022

Roll Number	<b>KD Job Updates</b>
Candidate Name	<b>KD Job Updates</b>
Venue Name	iON Digital Zone iDZ 2 Sector 62
Exam Date	11/01/2023
Exam Time	11:45 AM - 12:45 PM
Subject	Constable GD Examination 2022

Section : **Part-A-General Intelligence and Reasoning**

**Q.1** Select the option that is related to the fifth letter-cluster in the same way as the second letter-cluster is related to the first letter-cluster and the fourth letter-cluster is related to the third letter-cluster.

MUZHUK : KVXIGI :: QUACKY : OVYDIW :: ZEBECK : ?

- Ans
- 1. IAFZFX
  - 2. XFFZAI
  - 3. XFZF AI
  - 4. XAIFZF

Question ID : 26433083107  
Status : Answered  
Chosen Option : 3

**Q.2** In a certain code language, 'CLUTCH' is written as 'DNXXHN' and 'CREDIT' is written as 'DTHHNZ'. How will 'WALLET' be written in that language?

- Ans
- 1. XOCPJZ
  - 2. XCOPJZ
  - 3. XCPOJZ
  - 4. XCOJPZ

Question ID : 26433068226  
Status : Answered  
Chosen Option : 2

**Q.3** Select the letter-cluster from among the given options that can replace the question mark (?) in the following series.

HS, PK, XC, FU, ?

- Ans
- 1. PM
  - 2. PN
  - 3. NM
  - 4. MN

Question ID : 26433079037  
Status : Answered  
Chosen Option : 3



Q.4 Select the correct mirror image of the given figure when the mirror is placed at MN as shown below.



- Ans
- ✓ 1. a 2 H 8 | d b s
  - ✗ 2. a 2 H 8 | b d s
  - ✗ 3. a 2 8 H | d b s
  - ✗ 4. a 2 H 8 | b d s

Question ID : 26433082329

Status : Answered

Chosen Option : 1

Q.5 In a certain code language, 'COMBAT' is written as 'NPDVCD' and 'CREATE' is written as 'FSDGVC'. How will 'CREDIT' be written as in that language?

- Ans
- ✗ 1. ERCVKF
  - ✓ 2. FSDVKF
  - ✗ 3. ERCTID
  - ✗ 4. TIDERC

Question ID : 26433090040

Status : Answered

Chosen Option : 2

Q.6 Select the option that represents the correct order of the given words as they would appear in an English dictionary.

1. PURVEY
2. PURSE
3. PURPLE
4. PURELY
5. PUTTER
6. PUSTULE

- Ans
- ✗ 1. 3, 4, 2, 1, 6, 5
  - ✗ 2. 3, 4, 2, 1, 5, 6
  - ✓ 3. 4, 3, 2, 1, 6, 5
  - ✗ 4. 6, 5, 4, 3, 2, 1

Question ID : 26433079377

Status : Answered

Chosen Option : 3

Q.7 Select the correct combination of mathematical signs to sequentially replace the \* signs and balance the given equation.

$$14 * 1 * 15 * 75 * 21 = 30$$

- Ans
- 1. ÷, -, +, ×
  - 2. ×, ÷, +, -
  - 3. -, ×, +, ÷
  - 4. -, ÷, ×, +

Question ID : 26433091646  
Status : Answered  
Chosen Option : 4

Q.8 Which of the following numbers will replace the question mark (?) in the given series?  
5, 11, 23, 47, 95, ?

- Ans
- 1. 196
  - 2. 191
  - 3. 161
  - 4. 181

Question ID : 26433082015  
Status : Answered  
Chosen Option : 2

Q.9 Three Statements are given followed by Three conclusions numbered I, II and III. Assuming the statements to be true, even if they seem to be at variance with commonly known facts, decide which of the conclusions logically follow(s) from the statements.

Statements:

- All cans are dogs.
- Some dogs are rats.
- Some rats are apples.

Conclusions:

- I. No cans are dogs.
- II. Some rats are not dogs.
- III. Some apples are rats.

- Ans
- 1. Only conclusion III follows.
  - 2. None of the conclusions follow.
  - 3. Only conclusion II follows.
  - 4. Only conclusion I follows

Question ID : 26433081790  
Status : Answered  
Chosen Option : 1

**Q.10** Eight people, A, B, C, D, E, F, G and H are sitting in a straight line, facing north. Only three people sit to the left of A. B sits third to the right of A. Only four people sit between B and D. F sits to the immediate right of G. C does not sit at any of the extreme ends of the line. E sits at one of the positions to the right of H. How many people sit between H and A?

- Ans
- 1. None
  - 2. Three
  - 3. One
  - 4. Two

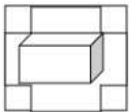
Question ID : 26433092419  
 Status : Answered  
 Chosen Option : 4

**Q.11** Select the option that is related to the fifth letter-cluster in the same way as the second letter-cluster is related to the first letter-cluster and the fourth letter-cluster is related to the third letter-cluster.  
 DGS : PEC :: NST : QQM :: EHK : ?

- Ans
- 1. HJF
  - 2. JFB
  - 3. NFD
  - 4. HFD

Question ID : 26433057743  
 Status : Answered  
 Chosen Option : 4

**Q.12** Select the option that is embedded in the given figure (rotation is NOT allowed).



- Ans
- 1.
  - 2.
  - 3.
  - 4.

Question ID : 26433082899  
 Status : Answered  
 Chosen Option : 4

Q.13 Which of the following terms will replace the question mark (?) in the given series?  
 QCSD, ?, WGQZ, ZIPX, CKOV

- Ans
- 1. ERTB
  - 2. BTER
  - 3. RETB
  - 4. TERB

Question ID : 26433068987  
 Status : Answered  
 Chosen Option : 4

Q.14 Select the figure from among the given options that can replace the question mark (?) in the following series.

X	=	M	☆	?
↑	C	↑	C	
=	M	☆	S	
C	↑	C	↑	

Ans

- 1. 

S
↑
☆
C
- 2. 

↑
S
T
C
- 3. 

S
↑
T
C
- 4. 

S
↑
C
T

KD Job Updates

Question ID : 26433080755  
 Status : Answered  
 Chosen Option : 3

Q.15 'P % Q' means 'P is the brother of Q'.  
'P + Q' means 'P is the daughter of Q'.  
'P = Q' means 'P is the son of Q'.  
'P # Q' means 'P is the wife of Q'.  
If  $A + B \% C = D \# F$ , how is F related to A?

- Ans
- 1. Father's brother's wife
  - 2. Father's brother
  - 3. Father's father
  - 4. Mother's mother

Question ID : 26433086999  
Status : Answered  
Chosen Option : 3

Q.16 Which two signs should be interchanged to make the below equation mathematically correct?  
 $54 \times 8 - 48 \div 12 + 27 = 24$

- Ans
- 1. - and +
  - 2. ÷ and -
  - 3. + and ×
  - 4. + and ÷

Question ID : 264330117556  
Status : Answered  
Chosen Option : 2

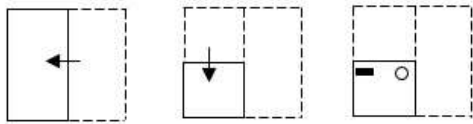
Q.17 Select the set in which the numbers are related in the same way as are the numbers of the following sets.

(NOTE : Operations should be performed on the whole numbers, without breaking down the numbers into its constituent digits. E.g. 13 - Operations on 13 such as adding/subtracting/multiplying etc. to 13 can be performed. Breaking down 13 into 1 and 3 and then performing mathematical operations on 1 and 3 is not allowed)  
(6, 135, 9)  
(13, 261, 16)

- Ans
- 1. (7, 216, 17)
  - 2. (9, 190, 13)
  - 3. (9, 224, 19)
  - 4. (11, 249, 16)

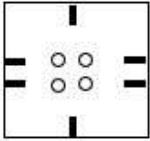
Question ID : 26433076544  
Status : Not Answered  
Chosen Option : --

Q.18 A paper is folded and cut as shown below. How will it appear when unfolded?

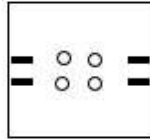


Ans

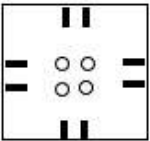
✗ 1.



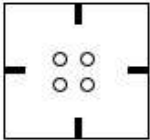
✓ 2.



✗ 3.



✗ 4.



Question ID : 26433090087

Status : Answered

Chosen Option : 2

Q.19 Which of the following options will replace the question mark (?) in the given series?  
416, 341, 276, ?, 176, 141, 116

Ans ✗ 1. 196

✓ 2. 221

✗ 3. 211

✗ 4. 201

Question ID : 26433089438

Status : Answered

Chosen Option : 2

**Q.20** Eight people are sitting in two parallel rows with 4 people each, in such a way that there is equal distance between adjacent persons and people of one row are facing the people of other row.

In Row I – 6, 7, 8 and 9 are seated and all of them are facing south.

In Row II – 1, 2, 3 and 4 are seated and all of them are facing north.

9 sits next to the person at the extreme left end of their row and is exactly opposite 4.

3 sits at the extreme left end of their row and 2 is his immediate neighbour.

Who sits at the extreme right end of the row facing North?

- Ans
- 1. 3
  - 2. 4
  - 3. 2
  - 4. 1

Question ID : 26433068743  
Status : Answered  
Chosen Option : 4

Section : Part-B-General Knowledge and General awareness

**Q.1** Who among the following personalities has won the Padma Shri for her contributions in Kathakali dance form in the year 2019?

- Ans
- 1. Geeta Kapoor
  - 2. Vaibhavi Merchant
  - 3. Shovana Narayan
  - 4. Milena Salvini

Question ID : 26433070807  
Status : Not Answered  
Chosen Option : --

**Q.2** Cow Dung is used in agriculture as a \_\_\_\_\_.

- Ans
- 1. organic fertilizer
  - 2. inorganic fertilizer
  - 3. chemical fertilizer
  - 4. waste product

Question ID : 264330115422  
Status : Answered  
Chosen Option : 1

**Q.3** In which city is the cricket stadium M Chinnaswamy located?

- Ans
- 1. Delhi
  - 2. Kolkata
  - 3. Bengaluru
  - 4. Mumbai

Question ID : 26433092327  
Status : Answered  
Chosen Option : 3

**Q.4** In which of the following Parts of the Constitution of India are Fundamental Rights embodied?

- Ans
- 1. IV
  - 2. I
  - 3. III
  - 4. II

Question ID : 26433054894  
Status : Answered  
Chosen Option : 3

**Q.5** Who among the following became Member of Legislative Assembly from Khairagarh, Chhattisgarh in India, in April 2022?

- Ans
- 1. Musafir Paswan
  - 2. Bandhu Tirkey
  - 3. Yashoda Verma
  - 4. Manoj Singh Mandavi

Question ID : 264330114960  
Status : Not Answered  
Chosen Option : --

**Q.6** Prime Minister Narendra Modi launched the Jal Jeevan Mission in \_\_\_\_\_.

- Ans
- 1. 2022
  - 2. 2019
  - 3. 2018
  - 4. 2014

Question ID : 264330116188  
Status : Not Answered  
Chosen Option : --

**Q.7** On which festival does people of North India worship goddess Lakshmi and lord Ganesha together?

- Ans
- 1. Dussehra
  - 2. Janmashtami
  - 3. Holi
  - 4. Diwali

Question ID : 264330109310  
Status : Answered  
Chosen Option : 4



**Q.8 Which means of transport is now being used to transfer crude oil, petroleum products and natural gas?**

- Ans  1. bus  
 2. pipelines  
 3. cable  
 4. airways

Question ID : 264330115590  
Status : Answered  
Chosen Option : 2

**Q.9 Which waterway connects the Atlantic Ocean with the Pacific Ocean?**

- Ans  1. Suez Canal  
 2. Kiel Canal  
 3. Volga-Don Canal  
 4. Panama Canal

Question ID : 264330116014  
Status : Answered  
Chosen Option : 1

**Q.10 Which dancing legend was the youngest recipient of Padma Bhushan in 1992?**

- Ans  1. Anuradha Pandey  
 2. Sonal Mansingh  
 3. Uday Shankar  
 4. Pandit Birju Maharaj

Question ID : 264330115842  
Status : Not Answered  
Chosen Option : --

**Q.11 According to the Article 243 of the Constitution of India, \_\_\_\_\_ means an institution of self-government constituted under article 243B, for the rural areas.**

- Ans  1. Gram Sabha  
 2. Municipal Committee  
 3. Panchayat  
 4. Municipal Corporation

Question ID : 26433086833  
Status : Not Answered  
Chosen Option : --

**Q.12 Lakshya Sen is a player of which sport?**

**Ans**  1. Badminton

2. Table Tennis

3. Cricket

4. Kabbadi

Question ID : 264330115946

Status : Answered

Chosen Option : 1

**Q.13 What best describes bulimia?**

**Ans**  1. eating disorder

2. neurodevelopmental disorder

3. bipolar disorder

4. anxiety disorder

Question ID : 264330115225

Status : Answered

Chosen Option : 2

**Q.14 Prior to the country's independence, India was particularly known for its \_\_\_\_\_ industries.**

**Ans**  1. Flower

2. Spices

3. Metal

4. Handicraft

Question ID : 264330116137

Status : Answered

Chosen Option : 2

**Q.15 Which of the following organisations conducts the sample surveys for calculating poverty line in India?**

**Ans**  1. Ministry of Finance

2. RBI

3. CSO

4. NSSO

Question ID : 264330115343

Status : Answered

Chosen Option : 2

**Q.16** Who has been appointed as the Director General of National Investigation Agency by the Appointments Committee of the Cabinet (ACC) in June 2022?

- Ans
- 1. Aamir Subhami
  - 2. Arun Mishra
  - 3. Naresh Kumar
  - 4. Dinkar Gupta

Question ID : 264330115046  
Status : Answered  
Chosen Option : 4

**Q.17** India accounts for how much of total world's surface area?

- Ans
- 1. 2.8%
  - 2. 3.9%
  - 3. 4.2%
  - 4. 2.4%

Question ID : 264330116051  
Status : Answered  
Chosen Option : 4

**Q.18** \_\_\_\_\_ spent a lot of time at Harshavardhana's court and left a detailed account of what he saw.

- Ans
- 1. Xuan Zang
  - 2. Faxian
  - 3. Kang Seng
  - 4. Yijing

Question ID : 264330106592  
Status : Answered  
Chosen Option : 1

**Q.19** In which year was Jhansi annexed by Lord Dalhousie under the policy Doctrine of Lapse?

- Ans
- 1. 1854
  - 2. 1850
  - 3. 1852
  - 4. 1848

Question ID : 26433099172  
Status : Answered  
Chosen Option : 4

Q.20 एक बर्तन लंबे समय तक नम हवा के संपर्क में रहता है। यह एक हल्की, हरी कोटिंग प्राप्त करता है। बर्तन किससे बना हुआ है?

- Ans
- 1. फास्फोरस
  - 2. कार्बन
  - 3. ताँबा
  - 4. लोह

Question ID : 264330115179  
Status : Answered  
Chosen Option : 3

Section : Part-C-Elementary Mathematics

Q.1 The curved surface area of a sphere of radius 14 cm is:

Take  $\pi = \frac{22}{7}$

- Ans
- 1. 2,446 cm<sup>2</sup>
  - 2. 2,464 cm<sup>2</sup>
  - 3. 2,428 cm<sup>2</sup>
  - 4. 2,454 cm<sup>2</sup>

Question ID : 26433076054  
Status : Answered  
Chosen Option : 2

Q.2 A company charges 10% per annum compound interest on loan. A sum of ₹2,20,000 is given by the company for a period of 2 years. The company compounded the interest every six months instead of every year. How much money would have been saved by the borrower if the company compounded the interest annually (rounded up to one decimal place)?

- Ans
- 1. ₹1,211.40
  - 2. ₹1,412.20
  - 3. ₹1,312.20
  - 4. ₹1,111.40

Question ID : 26433085461  
Status : Answered  
Chosen Option : 1

**Q.3 Find the smallest number divisible by the numbers 8, 16, 20 and 32.**

- Ans  1. 120  
 2. 200  
 3. 144  
 4. 160

Question ID : 26433082345  
Status : Answered  
Chosen Option : 4

**Q.4 Two trains, 140 m and 160 m in length, are running towards each other on parallel lines, one at the speed of 40 km/h and the other at 50 km/h. In how much time will they be clear of each other from the moment they meet?**

- Ans  1. 10 sec  
 2. 15 sec  
 3. 13 sec  
 4. 12 sec

Question ID : 26433076201  
Status : Answered  
Chosen Option : 4

**Q.5 Find the value of  $40 - [20 - \{14 - (16 - 6 \times 4 - 2)\}]$ .**

- Ans  1. 42  
 2. 44  
 3. 40  
 4. 38

Question ID : 26433079765  
Status : Answered  
Chosen Option : 2

**Q.6 The average attendance at a cricket club dropped from 5640 last year to 3820 this year. What was the percent decrease from last year to this year?**

- Ans  1. 24.48 percent  
 2. 18.20 percent  
 3. 32.26 percent  
 4. 28.82 percent

Question ID : 264330116792  
Status : Answered  
Chosen Option : 3

Q.7 A book is listed at Rs. 300, with a discount of 20 percent. What additional discount must be offered to bring the selling price to Rs. 216?

- Ans
- 1. 20 percent
  - 2. 10 percent
  - 3. 9 percent
  - 4. 16 percent

Question ID : 264330116757  
Status : Answered  
Chosen Option : 2

Q.8 The weight of a liquid varies directly with its volume. A liquid that weighs 12 kg has volume of 3 litres. What will be the weight of a liquid that has volume 4 litres?

- Ans
- 1. 12 kg
  - 2. 16 kg
  - 3. 14 kg
  - 4. 8 kg

Question ID : 26433075194  
Status : Answered  
Chosen Option : 2

Q.9 Out of 10 persons, 9 persons spent ₹15 each on their breakfast. The tenth person spent ₹9 more than the average expenditure of all of them. The total amount spent by all of them is:

- Ans
- 1. ₹144
  - 2. ₹135
  - 3. ₹10
  - 4. ₹160

Question ID : 26433076370  
Status : Answered  
Chosen Option : 4

Q.10 Arun bought a laptop from Sanchit for Rs.1,12,500. Sanchit earned a profit of 25% on the laptop. Raman sold the laptop to Sanchit at a gain of 20%. How much did Raman pay to buy the laptop?

- Ans
- 1. Rs.85,000
  - 2. Rs.80,000
  - 3. Rs.75,000
  - 4. Rs.90,000

Question ID : 26433075059  
Status : Not Answered  
Chosen Option : --

Q.11 A bus can run 20% faster than a bike. Both start from the same place at the same time and reach the same destination 60 km away at the same time. On the way, however, the bus stops at the stations for 10 minutes. The speed of the bike is:

- Ans
- 1. 60 km/h
  - 2. 70 km/h
  - 3. 55 km/h
  - 4. 65 km/h

Question ID : 26433075197  
Status : Answered  
Chosen Option : 3

Q.12 By selling 55 toffees, a shopkeeper earns a profit of 11 toffees. Determine the percentage profit earned.

- Ans
- 1. 25%
  - 2. 15%
  - 3. 11%
  - 4. 20%

Question ID : 26433071310  
Status : Answered  
Chosen Option : 4

Q.13 A can do a piece of work in 72 days and B in 90 days. They worked together for 30 days and then B left. Find the days taken by A to finish the remaining work.

- Ans
- 1. 18 days
  - 2. 17 days
  - 3. 16 days
  - 4. 14 days

Question ID : 264330116872  
Status : Answered  
Chosen Option : 1

Q.14 A company offers three types of successive discounts: First offer: 25% and 5%, Second offer: 20% and 10%, Third offer: 15% and 15%. Which offer is the best for a customer?

- Ans
- 1. All are equally good
  - 2. Third offer
  - 3. First offer
  - 4. Second offer

Question ID : 26433075190  
Status : Answered  
Chosen Option : 4

Q.15 A can do a piece of work in 20 days and B can do the same in 24 days. How many days will they take if both work together?

- Ans
- 1.  $10\frac{11}{10}$
  - 2.  $10\frac{10}{11}$
  - 3.  $8\frac{10}{11}$
  - 4.  $10\frac{10}{8}$

Question ID : 26433076204  
Status : Answered  
Chosen Option : 2

Q.16 If x is directly proportional to y and x = 10 when y = 8, then what is the value of x when y = 36?

- Ans
- 1. 45
  - 2. 42
  - 3. 48
  - 4. 40

Question ID : 26433075555  
Status : Answered  
Chosen Option : 1

Q.17 A number is increased by 30% and then again increased by 30%. By what percentage should the increased number be reduced so as to get back the original number?

- Ans
- 1. 40.82%
  - 2. 48.20%
  - 3. 42.80%
  - 4. 38.28%

Question ID : 26433072999  
Status : Answered  
Chosen Option : 3

Q.18 A sum of ₹10,500 deposited 2 years ago, compounded annually, with the rate of interest 10% per annum during the first year, and 12% per annum during the second year, will amount to \_\_\_\_\_.

- Ans
- 1. ₹12,937
  - 2. ₹12,936
  - 3. ₹12,705
  - 4. ₹12,396

Question ID : 26433076197  
Status : Answered  
Chosen Option : 2



Q.19 If a shopkeeper mixes two types of pulses worth Rs.80 per kg and Rs.95 per kg, in the ratio 2:3, then what is the average cost of the mixture?

- Ans
- 1. Rs.87 per kg
  - 2. Rs.91 per kg
  - 3. Rs.89 per kg
  - 4. Rs.90 per kg

Question ID : 26433075642  
Status : Answered  
Chosen Option : 3

Q.20 If the longest diagonal of a cube is  $\sqrt{432}$  cm, then its volume is:

- Ans
- 1. 1,928cm<sup>3</sup>
  - 2. 1,625cm<sup>3</sup>
  - 3. 1,825cm<sup>3</sup>
  - 4. 1,728cm<sup>3</sup>

Question ID : 26433074474  
Status : Answered  
Chosen Option : 4

Section : Part-D-English

Q.1 Select the INCORRECTLY spelt word.

- Ans
- 1. Efficient
  - 2. Compassion
  - 3. Mortality
  - 4. Loneliness

Question ID : 26433073736  
Status : Answered  
Chosen Option : 4

Q.2 Select the most appropriate synonym of the underlined word.

Ultimately it turned out to be a fair decision.

- Ans
- 1. Unbiased
  - 2. Hollow
  - 3. Effective
  - 4. Drowsy

Question ID : 26433088761  
Status : Answered  
Chosen Option : 1

**Q.3** Select the most appropriate option to substitute the underlined segment in the given sentence.

Due to increased international travel, the tourism sector has grown to be a global tracker to the global economy.

- Ans
- 1. a complementary distributor
  - 2. a major importer
  - 3. a worthless trade
  - 4. a substantial contributor

Question ID : 26433089830  
Status : Answered  
Chosen Option : 4

**Q.4** The following sentence has been split into four segments. Identify the segment that contains a grammatical error.  
This day next year / I will having a conference with / the international board / discussing the environment.

- Ans
- 1. I will having a conference with
  - 2. the international board
  - 3. This day next year,
  - 4. discussing the environment

Question ID : 264330100303  
Status : Answered  
Chosen Option : 1

**Q.5** Select the most appropriate meaning of the given idiom.

**In dire straits**

- Ans
- 1. Crumble under autocracy
  - 2. Eliminate doubts and fears
  - 3. Futuristic hope
  - 4. Very bad situation

Question ID : 26433073997  
Status : Answered  
Chosen Option : 1

**Q.6** Select the most appropriate synonym of the given word.

**Drowsy**

- Ans
- 1. Stimulant
  - 2. Restive
  - 3. Sleepy
  - 4. Active

Question ID : 26433088128  
Status : Answered  
Chosen Option : 3

**Q.7** Select the most appropriate idiom that can substitute the italicised words in the given sentence.

It was *a difficult task* to complete a relay run of 5 km in minutes yet our team managed to do it successfully.

- Ans
- 1. seeing pink elephants
  - 2. a Herculean effort
  - 3. kangaroo court
  - 4. the heels of Achilles

Question ID : 26433071999  
Status : Answered  
Chosen Option : 2

**Q.8** Select the most appropriate ANTONYM of the given word.

**Fatuity**

- Ans
- 1. Sapience
  - 2. Folly
  - 3. Obey
  - 4. Disregard

Question ID : 26433072214  
Status : Answered  
Chosen Option : 3

**Q.9** Select the most appropriate synonym of the given word to fill in the blank in the sentence.

**Procure**

It is very difficult to \_\_\_\_\_ food and fuel for daily necessities for people living below poverty line in the world.

- Ans
- 1. effort
  - 2. obtain
  - 3. guarantee
  - 4. console

Question ID : 26433060555  
Status : Answered  
Chosen Option : 2

**Q.10** The sentence given below has one misspelt word. Spot the INCORRECTLY spelt word and select its correct spelling.

The play depicts a futuristec society.

- Ans
- 1. Faturistic
  - 2. Fewchuristic
  - 3. Fuetristic
  - 4. Futuristic

Question ID : 26433073547  
Status : Answered  
Chosen Option : 4

Q.11 Select the most appropriate option that can substitute the underlined segment in the given sentence. If there is no need to substitute it, select 'No substitution'.  
Rapid deforestation may put the lives of many indigenous communities in a danger.

- Ans  1. in some danger  
 2. in danger  
 3. in the danger  
 4. No substitution

Question ID : 26433093075  
Status : Answered  
Chosen Option : 2

Q.12 Select the most appropriate ANTONYM of the given word.

Neglect

- Ans  1. Remember  
 2. Slight  
 3. Omit  
 4. Overlook

Question ID : 26433090786  
Status : Answered  
Chosen Option : 1

Q.13 Select the most appropriate option that can substitute the underlined segment in the given sentence.

In the olden days, when people went on pilgrimages, they created a feeling of belonging towards all, convey a message of brotherhood among all they came across.

- Ans  1. conveying  
 2. has conveyed  
 3. conveyed  
 4. have conveyed

Question ID : 26433091870  
Status : Answered  
Chosen Option : 3

Q.14 Select the most appropriate option to fill in the blanks in the given sentence.

The minister was supposed to \_\_\_\_\_ the gathering located at the \_\_\_\_\_ of Hotel Mao Inn.

- Ans  1. treat  
 2. address  
 3. deliver  
 4. speech

Question ID : 26433084771  
Status : Answered  
Chosen Option : 2

**Q.15** Select the most appropriate option to fill in the blanks and make the sentence meaningful.

My \_\_\_\_\_ intention was to have a good time in the excellent \_\_\_\_\_.

- Ans
- 1. soul; weather
  - 2. soul; whether
  - 3. sole; weather
  - 4. sole; whether

Question ID : 26433092099

Status : Answered

Chosen Option : 3

**Comprehension:**

In the following passage, some words have been deleted. Read the passage carefully and select the most appropriate option to fill in each blank.

The beach is often (1) \_\_\_\_\_ to as nature's most (2) \_\_\_\_\_ tourist spot. Going to the beach allows you to take in all of nature's splendour, which includes a (3) \_\_\_\_\_ of (4) \_\_\_\_\_ sights. The beach is the perfect place where I can sit, relax and enjoy the (5) \_\_\_\_\_ and beautiful natural surroundings.

SubQuestion No : 16

**Q.16** Select the most appropriate option to fill in blank number 1.

- Ans
- 1. named
  - 2. referred
  - 3. called
  - 4. associated

Question ID : 26433091727

Status : Answered

Chosen Option : 2

**Comprehension:**

In the following passage, some words have been deleted. Read the passage carefully and select the most appropriate option to fill in each blank.

The beach is often (1) \_\_\_\_\_ to as nature's most (2) \_\_\_\_\_ tourist spot. Going to the beach allows you to take in all of nature's splendour, which includes a (3) \_\_\_\_\_ of (4) \_\_\_\_\_ sights. The beach is the perfect place where I can sit, relax and enjoy the (5) \_\_\_\_\_ and beautiful natural surroundings.

SubQuestion No : 17

**Q.17** Select the most appropriate option to fill in blank number 2.

- Ans
- 1. recognised
  - 2. natural
  - 3. crowded
  - 4. organised

Question ID : 26433091728

Status : Answered

Chosen Option : 4

**Comprehension:**

In the following passage, some words have been deleted. Read the passage carefully and select the most appropriate option to fill in each blank.

The beach is often (1) \_\_\_\_\_ to as nature's most (2) \_\_\_\_\_ tourist spot. Going to the beach allows you to take in all of nature's splendour, which includes a (3) \_\_\_\_\_ of (4) \_\_\_\_\_ sights. The beach is the perfect place where I can sit, relax and enjoy the (5) \_\_\_\_\_ and beautiful natural surroundings.

**SubQuestion No : 18**

**Q.18 Select the most appropriate option to fill in blank number 3.**

- Ans  1. plethora  
 2. view  
 3. means  
 4. kind

Question ID : 26433091729  
Status : Answered  
Chosen Option : 2

**Comprehension:**

In the following passage, some words have been deleted. Read the passage carefully and select the most appropriate option to fill in each blank.

The beach is often (1) \_\_\_\_\_ to as nature's most (2) \_\_\_\_\_ tourist spot. Going to the beach allows you to take in all of nature's splendour, which includes a (3) \_\_\_\_\_ of (4) \_\_\_\_\_ sights. The beach is the perfect place where I can sit, relax and enjoy the (5) \_\_\_\_\_ and beautiful natural surroundings.

**SubQuestion No : 19**

**Q.19 Select the most appropriate option to fill in blank number 4.**

- Ans  1. rare  
 2. captivating  
 3. sorrowful  
 4. costly

Question ID : 26433091730  
Status : Answered  
Chosen Option : 1

**Comprehension:**

In the following passage, some words have been deleted. Read the passage carefully and select the most appropriate option to fill in each blank.

The beach is often (1) \_\_\_\_\_ to as nature's most (2) \_\_\_\_\_ tourist spot. Going to the beach allows you to take in all of nature's splendour, which includes a (3) \_\_\_\_\_ of (4) \_\_\_\_\_ sights. The beach is the perfect place where I can sit, relax and enjoy the (5) \_\_\_\_\_ and beautiful natural surroundings.

**SubQuestion No : 20**

**Q.20 Select the most appropriate option to fill in blank number 5.**

- Ans  1. cognizant  
 2. polluted  
 3. costliest  
 4. peaceful

Question ID : 26433091731  
Status : Answered  
Chosen Option : 4

Q.1 निम्नलिखित वाक्यांश के लिए एक सार्थक शब्द चुनिए।  
जिसे पार करना कठिन हो

- Ans
- 1. दूरदर्शी
  - 2. दुस्तर
  - 3. दत्तक
  - 4. पारंगत

Question ID : 26433062734  
Status : Not Answered  
Chosen Option : --

Q.2 'जो अपनी जगह से न डिगे' वाक्यांश के लिए उचित शब्द बताइए -

- Ans
- 1. आधार
  - 2. अखंड
  - 3. असीमित
  - 4. अडिग

Question ID : 26433065904  
Status : Not Answered  
Chosen Option : --

Q.3 'ऊंट के मुंह में पान भरना।' रेखांकित वाक्यांश के स्थान पर शुद्ध वाक्यांश होगा-

- Ans
- 1. जीरा देना
  - 2. पानी भरना
  - 3. नमक देना
  - 4. धनिया देना

Question ID : 26433062813  
Status : Not Answered  
Chosen Option : --

Q.4 'लालकिला भारत की \_\_\_\_\_ इमारत है।' वाक्य में रिक्त स्थान की पूर्ति शुद्ध शब्द द्वारा कीजिए।

- Ans
- 1. एतिहासिक
  - 2. इतिहासिक
  - 3. ऐतिहासिक
  - 4. इतिहाषिक

Question ID : 26433069702  
Status : Not Answered  
Chosen Option : --

Q.5 निम्नलिखित वाक्यांश के लिए उपयुक्त शब्द का चयन विकल्पों में से कीजिए।  
जो प्रमाण द्वारा सिद्ध न हो सके

- Ans
- 1. अचिंत्य
  - 2. अद्वितीय
  - 3. अनिर्वचनीय
  - 4. अप्रमेय

Question ID : 26433069995  
Status : Not Answered  
Chosen Option : --

Q.6 वाक्य में रेखांकित शब्द के स्थान पर सर्वोचित शब्द का चयन कीजिए।

प्रत्येक भारतवासी को हिंदी का सामान्य ज्ञान होना चाहिए।

- Ans
- 1. व्यावहारिक
  - 2. लौकिक
  - 3. सामाजिक
  - 4. साहित्यिक

Question ID : 26433065700  
Status : Not Answered  
Chosen Option : --

Q.7 'भारत देश के रहने वाले बहुत सारे लोग गौतम बुद्ध के अनुयायी थे।' वाक्य में प्रयुक्त 'अनुयायी' का विलोम शब्द है।

- Ans
- 1. पुजारी
  - 2. अनुगामी
  - 3. प्रसंशक
  - 4. विरोधी

Question ID : 26433069743  
Status : Not Answered  
Chosen Option : --

Q.8 निम्नलिखित मुहावरे के लिए उपयुक्त सार्थक शब्द है-  
बहती गंगा में हाथ धोना

- Ans
- 1. सम्मान देना
  - 2. अवसर का फायदा उठाना
  - 3. बहुत अधिक परिश्रम करना
  - 4. अपमान सहन कर लेना

Question ID : 26433065774  
Status : Not Answered  
Chosen Option : --



Q.9 'स्वर्ग' का पर्यायवाची शब्द इनमें से क्या होगा?

- Ans
- 1. क्षितिज
  - 2. ब्रह्मांड
  - 3. देवलोक
  - 4. द्यौ

Question ID : 26433066905  
Status : Not Answered  
Chosen Option : --

Q.10 निम्न में से किस वाक्य में 'गंगा' के सही पर्यायवाची शब्द का प्रयोग हुआ है?

- Ans
- 1. वेदवती का जल अत्यन्त पवित्र होता है।
  - 2. कालिंदी में स्नान करना फलदायक है।
  - 3. कालगंगा का जल बहुत पवित्र होता है।
  - 4. देवनदी का जल पवित्र होता है।

Question ID : 26433066933  
Status : Not Answered  
Chosen Option : --

Q.11 रिक्त स्थान की पूर्ति उचित संज्ञा शब्द से करें।  
\_\_\_\_\_ तरल अवस्था में होता है।

- Ans
- 1. कुछ
  - 2. वह
  - 3. सुन्दरी
  - 4. पारा

Question ID : 26433085022  
Status : Not Answered  
Chosen Option : --

Q.12 निम्नलिखित में से कौन-सा वाक्य संज्ञा के प्रयोग की दृष्टि से शुद्ध है?

- Ans
- 1. रघुवीर मेरा अग्रज बड़ा भाई है।
  - 2. रघुवीर मेरा अग्रज छोटा भाई है।
  - 3. रघुवीर मेरा अग्रज भाई है।
  - 4. रघुवीर मेरा अग्रज है।

Question ID : 26433066960  
Status : Not Answered  
Chosen Option : --

Q.13 'दादा-दादी का सबके जीवन में पूजनीय स्थान होता है।' उपरोक्त वाक्य के किस भाग में अशुद्ध वर्तनी वाला शब्द है?

- Ans
- 1. सबके जीवन में
  - 2. पूजनीय स्थान
  - 3. दादा-दादी का
  - 4. होता है।

Question ID : 26433069696  
Status : Not Answered  
Chosen Option : --

Q.14 वीर और साहसी पुरुष साधारण नहीं होते, अपितु \_\_\_\_\_ प्रतिभा से युक्त होते हैं।

साधारण के विलोम शब्द से वाक्य पूर्ण करें।

- Ans
- 1. विलक्षण
  - 2. बड़ी
  - 3. सामान्य
  - 4. कठोर

Question ID : 26433080879  
Status : Not Answered  
Chosen Option : --

Q.15 रेखांकित शब्द के स्थान पर सर्वोचित विकल्प चुनिए।  
आवश्यक काम में रत रहने के कारण मुझे अवकाश नहीं मिला।

- Ans
- 1. आसक्त
  - 2. व्यस्त
  - 3. विरक्त
  - 4. विलीन

Question ID : 26433084957  
Status : Not Answered  
Chosen Option : --

**Comprehension:**

निम्नलिखित गद्यांश में से कुछ शब्द हटा दिए गए हैं। दिए गए विकल्पों की सहायता से रिक्त स्थानों की पूर्ति कीजिए। प्रत्येक संख्या के लिए उपयुक्त विकल्प का चयन कीजिए-

बाबाजी भी मनुष्य ही थे। अपनी वस्तु की 1. \_\_\_\_\_ दूसरे के मुख से सुनने के लिए उनका हृदय अधीर हो गया। घोड़े को खोलकर बाहर गए। 2. \_\_\_\_\_ वायुवेग से उड़ने लगा। 3. \_\_\_\_\_ चाल देखकर खड्ग सिंह के हृदय पर साँप 4. \_\_\_\_\_ गया। वह डाकू था और जो वस्तु उसे पसंद आ जाए उस पर 5. \_\_\_\_\_ अपना अधिकार समझता था।

**SubQuestion No : 16**

Q.16 रिक्त स्थान 1 की पूर्ति के लिए सर्वाधिक उपयुक्त विकल्प का चयन कीजिए।

- Ans
- 1. नाम
  - 2. निंदा
  - 3. प्रशंसा
  - 4. बुराई

Question ID : 26433079692

Status : Not Answered

Chosen Option : --

**Comprehension:**

निम्नलिखित गद्यांश में से कुछ शब्द हटा दिए गए हैं। दिए गए विकल्पों की सहायता से रिक्त स्थानों की पूर्ति कीजिए। प्रत्येक संख्या के लिए उपयुक्त विकल्प का चयन कीजिए-

बाबाजी भी मनुष्य ही थे। अपनी वस्तु की 1. \_\_\_\_\_ दूसरे के मुख से सुनने के लिए उनका हृदय अधीर हो गया। घोड़े को खोलकर बाहर गए। 2. \_\_\_\_\_ वायुवेग से उड़ने लगा। 3. \_\_\_\_\_ चाल देखकर खड्ग सिंह के हृदय पर साँप 4. \_\_\_\_\_ गया। वह डाकू था और जो वस्तु उसे पसंद आ जाए उस पर 5. \_\_\_\_\_ अपना अधिकार समझता था।

**SubQuestion No : 17**

Q.17 रिक्त स्थान 2 की पूर्ति के लिए सर्वाधिक उपयुक्त विकल्प का चयन कीजिए।

- Ans
- 1. बैल
  - 2. घोड़ा
  - 3. मनुष्य
  - 4. बाबा

Question ID : 26433079693

Status : Not Answered

Chosen Option : --

**Comprehension:**

निम्नलिखित गद्यांश में से कुछ शब्द हटा दिए गए हैं। दिए गए विकल्पों की सहायता से रिक्त स्थानों की पूर्ति कीजिए। प्रत्येक संख्या के लिए उपयुक्त विकल्प का चयन कीजिए-

बाबाजी भी मनुष्य ही थे। अपनी वस्तु की 1. \_\_\_\_\_ दूसरे के मुख से सुनने के लिए उनका हृदय अधीर हो गया। घोड़े को खोलकर बाहर गए। 2. \_\_\_\_\_ वायुवेग से उड़ने लगा। 3. \_\_\_\_\_ चाल देखकर खड्ग सिंह के हृदय पर साँप 4. \_\_\_\_\_ गया। वह डाकू था और जो वस्तु उसे पसंद आ जाए उस पर 5. \_\_\_\_\_ अपना अधिकार समझता था।

**SubQuestion No : 18**

Q.18 रिक्त स्थान 3 की पूर्ति के लिए सर्वाधिक उपयुक्त विकल्प का चयन कीजिए।

- Ans
- 1. सबकी
  - 2. किसकी
  - 3. मेरी
  - 4. उसकी

Question ID : 26433079694

Status : Not Answered

Chosen Option : --

**Comprehension:**

निम्नलिखित गद्यांश में से कुछ शब्द हटा दिए गए हैं। दिए गए विकल्पों की सहायता से रिक्त स्थानों की पूर्ति कीजिए। प्रत्येक संख्या के लिए उपयुक्त विकल्प का चयन कीजिए-

बाबाजी भी मनुष्य ही थे। अपनी वस्तु की 1. \_\_\_\_\_ दूसरे के मुख से सुनने के लिए उनका हृदय अधीर हो गया। घोड़े को खोलकर बाहर गए। 2. \_\_\_\_\_ वायुवेग से उड़ने लगा। 3. \_\_\_\_\_ चाल देखकर खड्ग सिंह के हृदय पर साँप 4. \_\_\_\_\_ गया। वह डाकू था और जो वस्तु उसे पसंद आ जाए उस पर 5. \_\_\_\_\_ अपना अधिकार समझता था।

**SubQuestion No : 19**

Q.19 रिक्त स्थान 4 की पूर्ति के लिए सर्वाधिक उपयुक्त विकल्प का चयन कीजिए।

- Ans
- 1. रुक
  - 2. लोट
  - 3. छिप
  - 4. भाग

Question ID : 26433079695

Status : Not Answered

Chosen Option : --

**Comprehension:**

निम्नलिखित गद्यांश में से कुछ शब्द हटा दिए गए हैं। दिए गए विकल्पों की सहायता से रिक्त स्थानों की पूर्ति कीजिए। प्रत्येक संख्या के लिए उपयुक्त विकल्प का चयन कीजिए-

बाबाजी भी मनुष्य ही थे। अपनी वस्तु की 1. \_\_\_\_\_ दूसरे के मुख से सुनने के लिए उनका हृदय अधीर हो गया। घोड़े को खोलकर बाहर गए। 2. \_\_\_\_\_ वायुवेग से उड़ने लगा। 3. \_\_\_\_\_ चाल देखकर खड्ग सिंह के हृदय पर साँप 4. \_\_\_\_\_ गया। वह डाकू था और जो वस्तु उसे पसंद आ जाए उस पर 5. \_\_\_\_\_ अपना अधिकार समझता था।

**SubQuestion No : 20**

Q.20 रिक्त स्थान 5 की पूर्ति के लिए सर्वाधिक उपयुक्त विकल्प का चयन कीजिए।

- Ans
- 1. मुझे
  - 2. हम
  - 3. वह
  - 4. मैं

Question ID : 26433079696

Status : Not Answered

Chosen Option : --

KD Job Updates

# Constable GD in CAPFs SSF Rifleman GD in Assam Rifles and Sepoy in NCB Examination 2022

Roll Number	KD Job Updates
Candidate Name	KD Job Updates
Venue Name	iON Digital Zone iDZ 1 Sector 62
Exam Date	11/01/2023
Exam Time	2:30 PM - 3:30 PM
Subject	Constable GD Examination 2022

## Section : Part-A-General Intelligence and Reasoning

Q.1 Which of the following numbers will replace the question mark (?) in the given series?

19, 21, 25, 33, ?, 81, 145

- Ans
- 1. 47
  - 2. 49
  - 3. 50
  - 4. 48

Question ID : 26433069388  
Status : Answered  
Chosen Option : 2

Q.2 Select the correct mirror image of the given figure when the mirror is placed at MN as shown below.

Kr3i7BTEw



- Ans
- 1. wETB7i3rK
  - 2. w3TB7i3rK
  - 3. wETB7i3rK
  - 4. w3TB7i3rK

Question ID : 26433089457  
Status : Answered  
Chosen Option : 3

Q.3 Select the letter-cluster from among the given options that can replace the question mark (?) in the following series.

BQZJ, ELCM, HGFP, ?, NWLV

- Ans
- 1. EDGA
  - 2. EBSI
  - 3. KCUD
  - 4. KBIS

Question ID : 26433074744  
Status : Answered  
Chosen Option : 4

Q.4 Select the correct combination of mathematical signs to sequentially replace the \* signs and to balance the given equation.

$$30 * 95 * 5 * 32 * 4 * 497$$

- Ans
- 1. +, ×, −, =, ÷
  - 2. ×, +, −, ÷, =
  - 3. +, ×, ÷, −, =
  - 4. +, ×, −, ÷, =

Question ID : 26433083127  
Status : Answered  
Chosen Option : 4

Q.5 Which letter-cluster will replace the question mark (?) to complete the given series?  
ZTQM, YSPL, ?, WQNJ, VPMI

- Ans
- 1. XROK
  - 2. XRPK
  - 3. XSPK
  - 4. XSOK

Question ID : 26433067945  
Status : Answered  
Chosen Option : 1

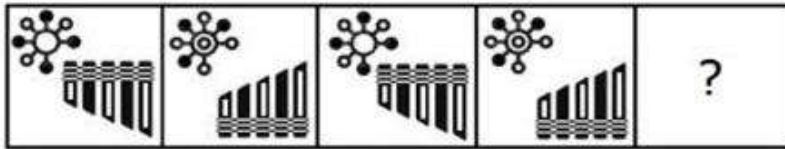
Q.6 Which two signs should be interchanged to make the below equation mathematically correct?

$$24 + 120 \div 8 \times 16 - 48 = 36$$

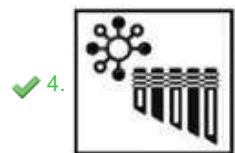

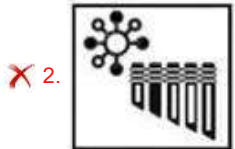

- Ans
- 1. ÷ and ×
  - 2. × and −
  - 3. − and +
  - 4. ÷ and −

Question ID : 264330117516  
Status : Answered  
Chosen Option : 1

Q.7 Select the figure that will come next in the following series.



Ans



Question ID : 26433078973  
Status : Answered  
Chosen Option : 4

Q.8 Select the number from among the given options that can replace the question mark (?) in the following series.  
7, 13, 28, 55, 112, ?

Ans ✓ 1. 223

✗ 2. 222

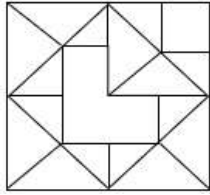
✗ 3. 322

✗ 4. 232

Question ID : 26433078919  
Status : Answered  
Chosen Option : 1

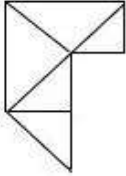


**Q.9** Select the option figure that is embedded in the given figure (rotation is NOT allowed).

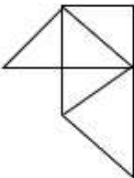


**Ans**

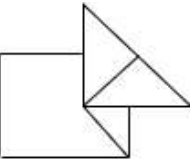
✓ 1.



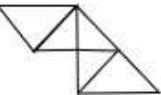
✗ 2.



✗ 3.



✗ 4.



Question ID : 26433069481  
Status : Answered  
Chosen Option : 1

**Q.10** Select the option that is related to the fourth term in the same way as the first term is related to the second term and the fifth term is related to the sixth term.  
 $8 : 6 :: ? : 12 :: 343 : 21$

**Ans** ✓ 1. 64

✗ 2. 27

✗ 3. 84

✗ 4. 72

Question ID : 26433074545  
Status : Answered  
Chosen Option : 1

Q.11 Six students are sitting around a circular table facing the centre. Vendyll is sitting fourth to the right of Leander. Michael is sitting third to the right of Vendyll. Gandhar is sitting second to the left of Michael. Yogita is sitting third to the right of Gandhar. Rocky is the immediate neighbour of Vendyll and Yogita. Who is sitting between Leander and Vendyll?

- Ans
- 1. Rocky
  - 2. Gandhar
  - 3. Yogita
  - 4. Michael

Question ID : 26433081775  
Status : Answered  
Chosen Option : 2

Q.12 Select the option that is related to the third word in the same way as the second word is related to the first word. (The words must be considered as meaningful English words and must NOT be related to each other based on the number of letters/number of consonants/vowels in the word)  
Drum : Percussion :: Guitar : \_\_\_\_\_

- Ans
- 1. Wind
  - 2. String
  - 3. Sitar
  - 4. Flute

Question ID : 26433079403  
Status : Answered  
Chosen Option : 2

Q.13 In a certain code language, 'COVER' is written as '18522153' and 'STINK' is written as '111492019'. How will 'PLATE' be written in that language?

- Ans
- 1. 52011216
  - 2. 16121195
  - 3. 68541264
  - 4. 56841525

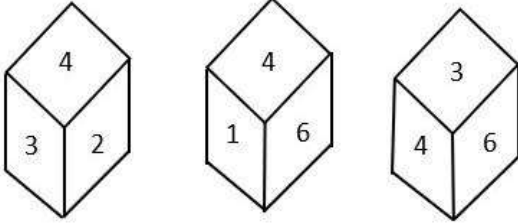
Question ID : 26433081765  
Status : Answered  
Chosen Option : 1

Q.14 Select the option that is related to the third word in the same way as the second word is related to the first word.  
(The words must be considered as meaningful English words and must not be related to each other based on the number of letters/number of consonants/vowels in the word)  
Sharp : blunt :: Dim : ?

- Ans
- 1. Sight
  - 2. Dark
  - 3. Light
  - 4. Bright

Question ID : 26433067973  
Status : Answered  
Chosen Option : 4

Q.15 Three different positions of the same dice are shown. Find the number on the face opposite the face showing '4'.



- Ans
- 1. 3
  - 2. 5
  - 3. 2
  - 4. 1

Question ID : 26433090074  
Status : Answered  
Chosen Option : 2

Q.16 Which option represents the correct order of the given words as they would appear in the English dictionary?

- 1 chair
- 2 chain
- 3 charm
- 4 charge
- 5 charcoal

- Ans
- 1. 2,1,5,4,3
  - 2. 1,2,3,4,5
  - 3. 2,4,1,3,5
  - 4. 2,3,1,4,5

Question ID : 26433069304  
Status : Answered  
Chosen Option : 1

Q.17 'A @ B' means 'A is the son of B'  
'A & B' means 'A is the mother of B'  
'A # B' means 'A is the daughter of B'  
Which of the following options means 'Q is the wife of S'?

- Ans
- 1. P @ Q & R # S
  - 2. R @ S @ Q # P
  - 3. R @ S & Q # P
  - 4. P # Q @ R # S

Question ID : 26433069659  
Status : Answered  
Chosen Option : 1

**Q.18** Three statements are given, followed by three conclusions numbered I, II and III. Assuming the statements to be true, even if they seem to be at variance with commonly known facts, decide which of the conclusions logically follow(s) from the statements.

**Statements:**

No coats are pants.

All pants are shirts.

Some shirts are coats.

**Conclusions:**

I. No coats are shirts.

II. Some shirts are pants.

III. Some pants are coats.

- Ans**
- 1. All conclusions follow
  - 2. Only conclusions II and III follow
  - 3. Only conclusion II follows
  - 4. Only conclusions I and III follow

Question ID : 26433090993

Status : Answered

Chosen Option : 3

**Q.19** In a certain code language, 'RESPECT' is written as 'EECPRST', 'HONOUR' is written as 'OOUHNR', how will 'COURAGE' be written as in that language?

- Ans**
- 1. AEOUCRG
  - 2. AEOUCGR
  - 3. CGRAEOU
  - 4. CRGAEOU

Question ID : 26433069651

Status : Answered

Chosen Option : 2

**Q.20** Six persons Hema, Rekha, Jaya, Sushma, Nimmi and Barkha are sitting in a row facing north. Barkha is not sitting beside Jaya and jaya is sitting at the extreme right. Only Hema is sitting between Nimmi and Barkha. Nimmi is not sitting beside Sushma and Jaya. Only Rekha is sitting between Sushma and Jaya. Who is sitting to the immediate right of Barkha?

- Ans**
- 1. Jaya
  - 2. Hema
  - 3. Sushma
  - 4. Nimmi

Question ID : 26433079059

Status : Answered

Chosen Option : 3

**Q.1 The Council of States also known as \_\_\_\_\_.**

- Ans**
- 1. High Court
  - 2. Lok Sabha
  - 3. Supreme Court
  - 4. Rajya Sabha

Question ID : **26433086860**  
Status : **Answered**  
Chosen Option : **4**

**Q.2 Which university was established in 1857?**

- Ans**
- 1. University of Bombay
  - 2. University of Bundelkhand
  - 3. University of Punjab
  - 4. University of Allahabad

Question ID : **264330115710**  
Status : **Answered**  
Chosen Option : **2**

**Q.3 Who among the following founded the Shunga dynasty?**

- Ans**
- 1. Pushyamitra
  - 2. Devabhuti
  - 3. Agnimitra
  - 4. Vasumitra

Question ID : **264330106590**  
Status : **Not Answered**  
Chosen Option : **--**

**Q.4 In India, the workforce population does NOT include people of \_\_\_\_\_.**

- Ans**
- 1. 16 years
  - 2. 20 years
  - 3. 17 years
  - 4. 14 years

Question ID : **264330116088**  
Status : **Not Answered**  
Chosen Option : **--**

**Q.5 As per Consumer Protection Rules, 2021, District Commissions shall have jurisdiction to entertain complaints where the value of the goods or services paid as consideration**

- Ans**
- 1. does not exceed ten lakh rupees
  - 2. exceeds one crore rupees
  - 3. does not exceed fifty lakh rupees
  - 4. does not exceed one lakh rupees

Question ID : 264330116236  
Status : Not Answered  
Chosen Option : --

**Q.6 Who has been appointed to the post of Executive Director for India at the International Monetary Fund (IMF) as announced in August 2022??**

- Ans**
- 1. Rajesh Sharma
  - 2. Gita Gopinath
  - 3. Ramesh Chand
  - 4. Krishnamurthy Subramanian

Question ID : 264330115006  
Status : Answered  
Chosen Option : 2

**Q.7 How many Fundamental Duties are mentioned in the Indian constitution? (As on May 2022)**

- Ans**
- 1. 9
  - 2. 10
  - 3. 11
  - 4. 8

Question ID : 264330115621  
Status : Answered  
Chosen Option : 3

**Q.8 Rasheswar Saikia Barbayan is related with \_\_\_\_\_ dance.**

- Ans**
- 1. Kuchipudi
  - 2. Odissi
  - 3. Sattriya
  - 4. Bharatnatyam

Question ID : 264330115890  
Status : Marked For Review  
Chosen Option : 2

**Q.9 Which non-conventional energy source is/are available in India?**

- Ans  1. tidal, wind and solar energy  
 2. only solar energy  
 3. only solar and wind energy  
 4. only tidal energy

Question ID : 264330115550  
Status : **Marked For Review**  
Chosen Option : 1

**Q.10 Who among the following is the founder of the Grameen Bank of Bangladesh?**

- Ans  1. Abdus Salam  
 2. Muhammad Yunus  
 3. Muzaffar Ahmed  
 4. Mahbub ul Haq

Question ID : 26433054799  
Status : **Not Answered**  
Chosen Option : --

**Q.11 The chemical name of the acid present in vinegar is called \_\_\_\_\_.**

- Ans  1. nitric acid  
 2. acetic acid  
 3. formic acid  
 4. malonic acid

Question ID : 26433066470  
Status : **Answered**  
Chosen Option : 4

**Q.12 The hot weather season is also the season for localised thunderstorms, associated with violent winds, torrential downpours, often accompanied by hail. In West Bengal, these storms are known as the \_\_\_\_\_.**

- Ans  1. Mahawat  
 2. Tahiti  
 3. Loo  
 4. Kaal baisakhi

Question ID : 26433091487  
Status : **Not Answered**  
Chosen Option : --

Q.13 Which political leader from Jammu and Kashmir, India started a 3-day visit to Kishtwar-Doda belt in November 2022?

- Ans
- 1. Mehbooba Mufti
  - 2. Farooq Abdullah
  - 3. Ghulam Nabi Azad
  - 4. Tariq Hameed Karra

Question ID : 264330114935  
Status : Not Answered  
Chosen Option : --

Q.14 \_\_\_\_\_ ≡ Sum total of gross value added of all the firms in the economy

- Ans
- 1. NI
  - 2. GDP
  - 3. GNP
  - 4. NNP

Question ID : 264330115303  
Status : Answered  
Chosen Option : 2

Q.15 The South Asian Games was first held in which year?

- Ans
- 1. 1990
  - 2. 1988
  - 3. 1985
  - 4. 1984

Question ID : 264330115939  
Status : Answered  
Chosen Option : 2

Q.16 Thrissur Pooram festival It is celebrated in which of the following states?

- Ans
- 1. Karnataka
  - 2. Kerala
  - 3. Andhra Pradesh
  - 4. Tamil Nadu

Question ID : 264330115111  
Status : Answered  
Chosen Option : 2

Q.17 Vitamin C is an \_\_\_\_\_.

- Ans
- 1. antioxidant
  - 2. antibiotic
  - 3. antigen
  - 4. antivirus

Question ID : 264330115202  
Status : Answered  
Chosen Option : 1



Q.18 The horizontal rows of squares in chess are called \_\_\_\_\_.

- Ans  1. ranks  
 2. pawns  
 3. bishops  
 4. files

Question ID : 26433071571  
Status : Answered  
Chosen Option : 3

Q.19 Which of the following can be considered as a major hub of Information Technology industry in India?

- Ans  1. Surat  
 2. Bengaluru  
 3. Bhopal  
 4. Kashmir

Question ID : 264330115399  
Status : Answered  
Chosen Option : 2

Q.20 Grida folk dance is performed in the state of Madhya Pradesh during \_\_\_\_\_ when the rabi crop is ready to be harvested.

- Ans  1. winter  
 2. autumn  
 3. summer  
 4. spring

Question ID : 264330115068  
Status : Answered  
Chosen Option : 1

Section : Part-C-Elementary Mathematics

Q.1 Find the mean proportional between 3 and 27.

- Ans  1. 5  
 2. 9  
 3. 10  
 4. 6

Question ID : 26433082100  
Status : Answered  
Chosen Option : 2

**Q.2** In a library, 25% of the number of mathematics books is equal to two-third of the number of physics books. What is the ratio of the number of mathematics books to that of the physics books in the library?

- Ans
- 1. 4 : 7
  - 2. 8 : 3
  - 3. 7 : 4
  - 4. 3 : 8

Question ID : 26433082368  
Status : Answered  
Chosen Option : 2

**Q.3** A thief steals a car at 3:30 p.m. and drives it at 80km/h. The theft is discovered at 4:00 p.m. and the owner sets off in another car at 90km/h. When will he catch the thief?

- Ans
- 1. 8:00 p.m.
  - 2. 8:30 p.m.
  - 3. 7:30 p.m.
  - 4. 7:00 p.m.

Question ID : 26433073039  
Status : Answered  
Chosen Option : 1

**Q.4** The average age of 14 students and their teacher is 20 years. If the teacher is excluded, then their average age reduces by 1.5 years. The teacher's age is:

- Ans
- 1. 41 years
  - 2. 30 years
  - 3. 39 years
  - 4. 59 years

Question ID : 26433087340  
Status : Answered  
Chosen Option : 1

**Q.5** The HCF of 1020, 850 and 1156 is:

- Ans
- 1. 28
  - 2. 24
  - 3. 34
  - 4. 22

Question ID : 26433076390  
Status : Answered  
Chosen Option : 3

**Q.6** How much time does Rani take to cover a distance of 200 m, if she runs at a speed of 15 km/h?

- Ans
- 1. 12 sec
  - 2. 24 sec
  - 3. 36 sec
  - 4. 48 sec

Question ID : 26433073034  
Status : Answered  
Chosen Option : 4

**Q.7** Aman covers a distance of 15 km in 3 hours and a distance of 20 km in 2 hours. What is the average speed of Aman?

- Ans
- 1. 5 km/h
  - 2. 8 km/h
  - 3. 7 km/h
  - 4. 6 km/h

Question ID : 26433075057  
Status : Answered  
Chosen Option : 3

**Q.8** S can complete a task in 50 days, T can complete it in 40 days and M can complete it in 30 days. S can work on all days of the week; T can work only on Monday, Wednesday, and Friday while M can work only on Saturday and Sunday. The work is started on Monday. In how many weeks it will be completed?

- Ans
- 1. Between 4 to 5 weeks
  - 2. Exactly 3 weeks
  - 3. Between 3 to 4 weeks
  - 4. Between 2 to 3 weeks

Question ID : 26433085471  
Status : Answered  
Chosen Option : 3

**Q.9** The radius of the base of a right circular cone is 7 cm and its curved surface area is  $550 \text{ cm}^2$ . The volume of the cone is:

(Use  $\pi = \frac{22}{7}$ )

- Ans
- 1.  $1223 \text{ cm}^3$
  - 2.  $1233 \text{ cm}^3$
  - 3.  $1322 \text{ cm}^3$
  - 4.  $1232 \text{ cm}^3$

Question ID : 26433075211  
Status : Answered  
Chosen Option : 4

Q.10 A bat is bought for Rs.750 and sold at a loss of 8%. What is its selling price?

- Ans
- 1. Rs.660
  - 2. Rs.680
  - 3. Rs.630
  - 4. Rs.690

Question ID : 26433075145  
Status : Answered  
Chosen Option : 4

Q.11 Successive discounts of 13 percent and 19 percent are equivalent to a single discount of :

- Ans
- 1. 9.53 percent
  - 2. 39.53 percent
  - 3. 29.53 percent
  - 4. 19.53 percent

Question ID : 26433074224  
Status : Answered  
Chosen Option : 3

Q.12 A shopkeeper offers a 20% discount on all garments and offers a further discount of 5% to those customers who pay cash. What does a customer have to pay in cash for a jacket whose marked price is ₹7,200?

- Ans
- 1. ₹6,972
  - 2. ₹5,760
  - 3. ₹5,472
  - 4. ₹6,048

Question ID : 26433087366  
Status : Answered  
Chosen Option : 3

Q.13 A hemispherical bowl made of brass has an inner diameter of 14 cm. Find the cost of painting it from the inside at the rate of ₹15 per  $\text{cm}^2$ . (Use  $\pi = \frac{22}{7}$ )

- Ans
- 1. ₹4,120
  - 2. ₹3,170
  - 3. ₹4,620
  - 4. ₹2,670

Question ID : 26433080068  
Status : Answered  
Chosen Option : 3

Q.14 The ratio of the cost price to the marked price of a table is 3:4. The shopkeeper gives two equal successive discounts of 25% on the marked price and sells the table for Rs.2,250. Find the loss during this transaction.

- Ans
- 1. Rs.1,000
  - 2. Rs.750
  - 3. Rs.500
  - 4. Rs.250

Question ID : 26433075973  
Status : Answered  
Chosen Option : 1

Q.15 Divide the LCM of the 35 and 42 by the HCF of 32 and 40.

- Ans
- 1. 26.375
  - 2. 26.125
  - 3. 26.000
  - 4. 26.250

Question ID : 264330116652  
Status : Answered  
Chosen Option : 4

Q.16 Find the mean proportional between 9 and 25.

- Ans
- 1. 26
  - 2. 15
  - 3. 17
  - 4. 23

Question ID : 26433074950  
Status : Answered  
Chosen Option : 2

Q.17 In how many years will Rs.12,500 become Rs.21,600 at the rate of 20% per annum on compound interest when interest is compounding annually?

- Ans
- 1. 2
  - 2. 7
  - 3. 5
  - 4. 3

Question ID : 26433081475  
Status : Answered  
Chosen Option : 4

Q.18 Under simple rate of growth, the population (P units) of a city becomes 1.5 times of P in 10 years. In how many years, the population of the city would become double (2 times P) under the same growth rate?

- Ans  1. 20  
 2. 15  
 3. 17  
 4. 12

Question ID : 26433081721  
Status : Answered  
Chosen Option : 4

Q.19 During the first year, the population of a city increased by 5% and during the second year, it diminished by 4%. At the end of the second year, its population was 30,240. The population at the end of the first year was:

- Ans  1. 30000  
 2. 30300  
 3. 31500  
 4. 31200

Question ID : 26433087347  
Status : Answered  
Chosen Option : 1

Q.20 Bhanu can do a work in 10 days. Ramesh takes 12 days to complete it. Rohit takes as long as Bhanu and Ramesh would take working together. How long will it take Ramesh and Rohit to complete the work together?

- Ans  1.  $3\frac{3}{8}$  days  
 2.  $3\frac{3}{7}$  days  
 3.  $3\frac{3}{4}$  days  
 4.  $3\frac{3}{5}$  days

Question ID : 26433075122  
Status : Answered  
Chosen Option : 3

**Q.1** Select the most appropriate option to fill in the blank with the synonym of the underlined word.

The film was a funny adaption of an old classic. The \_\_\_\_\_ depiction was well received by the audience.

- Ans
- 1. humorous
  - 2. trendy
  - 3. nervous
  - 4. tropical

Question ID : 26433094737  
Status : Not Answered  
Chosen Option : --

**Q.2** Select the most appropriate ANTONYM of the given word.

Apparent

- Ans
- 1. Obvious
  - 2. Actual
  - 3. Evident
  - 4. Hidden

Question ID : 26433074050  
Status : Not Answered  
Chosen Option : --

**Q.3** Select the most appropriate ANTONYM of the word given in the brackets to fill in the blank.

She is a direct \_\_\_\_\_ (ancestor) of Queen Victoria.

- Ans
- 1. descendant
  - 2. primogenitor
  - 3. antecedent
  - 4. forerunner

Question ID : 26433088855  
Status : Not Answered  
Chosen Option : --

**Q.4** Select the most appropriate meaning of the given idiom.

Steal someone's thunder

- Ans
- 1. To follow a successful person's instructions
  - 2. To imitate others
  - 3. To take the credit for something someone else did
  - 4. To find it difficult to choose between two alternatives

Question ID : 26433072852  
Status : Not Answered  
Chosen Option : --

Q.5 Select the most appropriate synonym of the given word.

Conviction

- Ans
- 1. Approach
  - 2. Suspicion
  - 3. Doubt
  - 4. Belief

Question ID : 26433073863  
Status : Not Answered  
Chosen Option : --

Q.6 Select the option that can be used as a one-word substitute for the underlined group of words.

Johnson wrote a drama in which he discusses the study of chemistry in a medieval fashion.

- Ans
- 1. Rhetoric
  - 2. Lexicography
  - 3. Alchemy
  - 4. Anthropology

Question ID : 26433088613  
Status : Not Answered  
Chosen Option : --

Q.7 Select the INCORRECTLY spelt word.

- Ans
- 1. Curriculum
  - 2. Enthusiastic
  - 3. Explanation
  - 4. Height

Question ID : 26433073723  
Status : Not Answered  
Chosen Option : --

Q.8 Select the most appropriate option that can substitute the underlined word in the given sentence. If there is no need to substitute it, select 'No substitution required'.  
The talk was not understandable .

- Ans
- 1. No substitution required
  - 2. comprehensible
  - 3. comprehended
  - 4. comprehensive

Question ID : 264330101412  
Status : Not Answered  
Chosen Option : --



Q.9 Select the correct pair of words for the blanks in the given sentence.

Jharkhand is a major \_\_\_\_\_ producing state in India whereas the union territory of Jammu & Kashmir is a \_\_\_\_\_ place.

- Ans
- 1. cold; coal
  - 2. coal; coal
  - 3. cold; cold
  - 4. coal; cold

Question ID : 26433060547  
Status : Not Answered  
Chosen Option : --

Q.10 Select the correct idiom that can substitute the italicised group of words in the given sentence.

Soma has *made a mess of* her financial affairs.

- Ans
- 1. made up one's mind
  - 2. made a mountain out of a molehill
  - 3. made a hash of
  - 4. made both ends meet

Question ID : 26433084759  
Status : Not Answered  
Chosen Option : --

Q.11 Select the most appropriate option to fill in the blank.  
William couldn't stop \_\_\_\_\_ against the comments of the officer.

- Ans
- 1. reacting
  - 2. opening
  - 3. responding
  - 4. starting

Question ID : 26433091379  
Status : Not Answered  
Chosen Option : --

Q.12 Select the most appropriate ANTONYM of the given word.

Just

- Ans
- 1. Unfair
  - 2. Gullible
  - 3. Honest
  - 4. Jovial

Question ID : 26433092071  
Status : Not Answered  
Chosen Option : --

**Q.13** The following sentence has been divided into parts. One of them may contain an error. Select the part that contains the error from the given options. If you don't find any error, mark 'No error' as your answer.

The technician has found it / extremely difficult to fix / the error in the programme.

- Ans  1. The technician has found it  
 2. No error  
 3. the error in the programme  
 4. extremely difficult to fix

Question ID : 26433094751  
Status : Not Answered  
Chosen Option : --

**Q.14** Select the most appropriate synonym of the underlined word in the following sentence.

He and his family members live in prosperity.

- Ans  1. Poverty  
 2. Richness  
 3. Loft  
 4. Hardship

Question ID : 26433072353  
Status : Not Answered  
Chosen Option : --

**Q.15** Select the most appropriate option that can substitute the underlined segment in the given sentence. If there is no need to substitute it, select 'No substitution'.

They found it difficult to extract relevent information from the officer.

- Ans  1. No substitution  
 2. relevint  
 3. relevant  
 4. relivant

Question ID : 26433074004  
Status : Not Answered  
Chosen Option : --

**Comprehension:**

In the following passage, some words have been deleted. Read the passage carefully and select the most appropriate option to fill in each blank.

Why does a person become overconfident? The reason lies in over assessment of his capabilities. Sometimes people over assess their (1) \_\_\_\_\_ and jump into situations that are beyond their control.

Napoleon Bonaparte who became Emperor of France would say that the word 'impossible' was common only (2) \_\_\_\_\_ fools. The overconfident Napoleon invaded Russia in the winter of 1812. This proved to be a big disaster.

Overconfidence generally (3) \_\_\_\_\_ people into misadventures, endangering their chances in life. It is wisely said that any achievement is a result of two factors – one's personal planning and support from the external world. People take into account only their planning, generally ignoring external factors. As a result they are unable to (4) \_\_\_\_\_ future developments. Hence, a great risk of failure.

Then there is the question: how can one manage overconfidence? The formula is very simple.

Before making a decision, discuss the matter with other informed people with an objective mind and when it is proved that you are about to go off the path, accept reality and say without delay, "I was wrong".

Overconfidence is a (5) \_\_\_\_\_ characterising people who lack the virtue of modesty.

Modesty makes you a realist; you become a person who is cut down to size. People of this kind become very cautious; before taking an action they assess the whole situation. They adopt a realistic approach.

**SubQuestion No : 16**

**Q.16** Select the most appropriate option to fill in blank number 1.

Ans  1. liability

2. competence

3. fidelity

4. endowment

Question ID : 26433088919

Status : Not Answered

Chosen Option : --

**Comprehension:**

In the following passage, some words have been deleted. Read the passage carefully and select the most appropriate option to fill in each blank.

Why does a person become overconfident? The reason lies in over assessment of his capabilities. Sometimes people over assess their (1) \_\_\_\_\_ and jump into situations that are beyond their control.

Napoleon Bonaparte who became Emperor of France would say that the word 'impossible' was common only (2) \_\_\_\_\_ fools. The overconfident Napoleon invaded Russia in the winter of 1812. This proved to be a big disaster.

Overconfidence generally (3) \_\_\_\_\_ people into misadventures, endangering their chances in life. It is wisely said that any achievement is a result of two factors – one's personal planning and support from the external world. People take into account only their planning, generally ignoring external factors. As a result they are unable to (4) \_\_\_\_\_ future developments. Hence, a great risk of failure.

Then there is the question: how can one manage overconfidence? The formula is very simple.

Before making a decision, discuss the matter with other informed people with an objective mind and when it is proved that you are about to go off the path, accept reality and say without delay, "I was wrong".

Overconfidence is a (5) \_\_\_\_\_ characterising people who lack the virtue of modesty.

Modesty makes you a realist; you become a person who is cut down to size. People of this kind become very cautious; before taking an action they assess the whole situation. They adopt a realistic approach.

**SubQuestion No : 17**

**Q.17** Select the most appropriate option to fill in blank number 2.

Ans  1. betwixt

2. amongst

3. mid

4. through

Question ID : 26433088920

Status : Not Answered

Chosen Option : --

**Comprehension:**

In the following passage, some words have been deleted. Read the passage carefully and select the most appropriate option to fill in each blank.

Why does a person become overconfident? The reason lies in over assessment of his capabilities. Sometimes people over assess their (1) \_\_\_\_\_ and jump into situations that are beyond their control.

Napoleon Bonaparte who became Emperor of France would say that the word 'impossible' was common only (2) \_\_\_\_\_ fools. The overconfident Napoleon invaded Russia in the winter of 1812. This proved to be a big disaster.

Overconfidence generally (3) \_\_\_\_\_ people into misadventures, endangering their chances in life. It is wisely said that any achievement is a result of two factors – one's personal planning and support from the external world. People take into account only their planning, generally ignoring external factors. As a result they are unable to (4) \_\_\_\_\_ future developments. Hence, a great risk of failure.

Then there is the question: how can one manage overconfidence? The formula is very simple.

Before making a decision, discuss the matter with other informed people with an objective mind and when it is proved that you are about to go off the path, accept reality and say without delay, "I was wrong".

Overconfidence is a (5) \_\_\_\_\_ characterising people who lack the virtue of modesty.

Modesty makes you a realist; you become a person who is cut down to size. People of this kind become very cautious; before taking an action they assess the whole situation. They adopt a realistic approach.

**SubQuestion No : 18**

**Q.18** Select the most appropriate option to fill in blank number 3.

Ans  1. convoys

2. leads

3. manages

4. attends

Question ID : 26433088921

Status : **Not Answered**

Chosen Option : --

KD Job Updates

**Comprehension:**

In the following passage, some words have been deleted. Read the passage carefully and select the most appropriate option to fill in each blank.

Why does a person become overconfident? The reason lies in over assessment of his capabilities. Sometimes people over assess their (1) \_\_\_\_\_ and jump into situations that are beyond their control.

Napoleon Bonaparte who became Emperor of France would say that the word 'impossible' was common only (2) \_\_\_\_\_ fools. The overconfident Napoleon invaded Russia in the winter of 1812. This proved to be a big disaster.

Overconfidence generally (3) \_\_\_\_\_ people into misadventures, endangering their chances in life. It is wisely said that any achievement is a result of two factors – one's personal planning and support from the external world. People take into account only their planning, generally ignoring external factors. As a result they are unable to (4) \_\_\_\_\_ future developments. Hence, a great risk of failure.

Then there is the question: how can one manage overconfidence? The formula is very simple.

Before making a decision, discuss the matter with other informed people with an objective mind and when it is proved that you are about to go off the path, accept reality and say without delay, "I was wrong".

Overconfidence is a (5) \_\_\_\_\_ characterising people who lack the virtue of modesty.

Modesty makes you a realist; you become a person who is cut down to size. People of this kind become very cautious; before taking an action they assess the whole situation. They adopt a realistic approach.

**SubQuestion No : 19**

**Q.19** Select the most appropriate option to fill in blank number 4.

- Ans  1. look  
 2. foresee  
 3. divine  
 4. alert

Question ID : 26433088922

Status : **Not Answered**

Chosen Option : --

**Comprehension:**

In the following passage, some words have been deleted. Read the passage carefully and select the most appropriate option to fill in each blank.

Why does a person become overconfident? The reason lies in over assessment of his capabilities. Sometimes people over assess their (1) \_\_\_\_\_ and jump into situations that are beyond their control.

Napoleon Bonaparte who became Emperor of France would say that the word 'impossible' was common only (2) \_\_\_\_\_ fools. The overconfident Napoleon invaded Russia in the winter of 1812. This proved to be a big disaster.

Overconfidence generally (3) \_\_\_\_\_ people into misadventures, endangering their chances in life. It is wisely said that any achievement is a result of two factors – one's personal planning and support from the external world. People take into account only their planning, generally ignoring external factors. As a result they are unable to (4) \_\_\_\_\_ future developments. Hence, a great risk of failure.

Then there is the question: how can one manage overconfidence? The formula is very simple. Before making a decision, discuss the matter with other informed people with an objective mind and when it is proved that you are about to go off the path, accept reality and say without delay, "I was wrong".

Overconfidence is a (5) \_\_\_\_\_ characterising people who lack the virtue of modesty. Modesty makes you a realist; you become a person who is cut down to size. People of this kind become very cautious; before taking an action they assess the whole situation. They adopt a realistic approach.

**SubQuestion No : 20**

**Q.20** Select the most appropriate option to fill in blank number 5.

- Ans  1. malformation  
 2. flaw  
 3. impairment  
 4. kink

Question ID : 26433088923

Status : Not Answered

Chosen Option : --

**Section : Part-D-Hindi**

**Q.1** मुझे अभी बहुत बातें सीखना है।  
उपरोक्त वाक्य के किस भाग में अशुद्धि है?

- Ans  1. मुझे  
 2. अभी बहुत  
 3. बातें  
 4. सीखना है।

Question ID : 26433079759

Status : Answered

Chosen Option : 4

**Q.2** 'ऐसे साहित्य के रचयिता अधिक मात्रा में व्याप्त हैं।' – वाक्य के रेखांकित भाग को उचित विकल्प चुनकर प्रतिस्थापित करें।

- Ans  1. अधिक संख्या में व्याप्त  
 2. अधिक मात्रा में विद्यमान  
 3. बहुत मात्रा में विद्यमान  
 4. अधिक संख्या में विद्यमान

Question ID : 26433062810

Status : Answered

Chosen Option : 2

Q.3 निम्न वाक्य में रेखांकित अंश के स्थान पर सबसे उपयुक्त शब्द का चयन विकल्पों में से कीजिए।  
इंदिरा गांधी भारत की राजनेता थीं।

- Ans  1. राजनेत्री  
 2. अभिनेता  
 3. राजकुमारी  
 4. अभिनेत्री

Question ID : 26433072581  
Status : Answered  
Chosen Option : 1

Q.4 नीचे दिए वाक्यांश के लिए उचित शब्द दिए गए विकल्पों में से चुनिए-  
जिसके पास न पहुँचा जा सके

- Ans  1. अगाध  
 2. अगोचर  
 3. अगम्य  
 4. अगवानी

Question ID : 26433062384  
Status : Answered  
Chosen Option : 3

Q.5 'व्यायामशाला \_\_\_\_\_।'।  
उपर्युक्त वाक्य में रिक्त स्थान पर आने वाले उपयुक्त विकल्प का चयन कीजिए।

- Ans  1. वह स्थान है, जहाँ व्यायाम किया जाता है  
 2. वह स्थान है, जहाँ बैठकर चर्चा होती है  
 3. वह स्थान है, जहाँ हवन किया जाता है  
 4. वह स्थान है, जहाँ न्याय किया जाता है

Question ID : 26433067046  
Status : Answered  
Chosen Option : 1

Q.6 निम्नलिखित विकल्पों में से कौनसा एक वाक्य अनुबद्ध क्रिया-विशेषण से सम्बन्ध नहीं रखता है?

- Ans  1. मैंने उसे देखा भर था।  
 2. सीता गा तो सकती है।  
 3. कल वह गया ही नहीं।  
 4. यह कार्य तो किसी ने कर दिया।

Question ID : 26433091236  
Status : Answered  
Chosen Option : 4



Q.7 'आटे ढाल का \_\_\_\_\_ ढालूढ हूढनल' इस ढुहलवरे कु डूरल करूँ।

- Ans  1. रूडडल  
 2. डूसल  
 3. रूंग  
 4. डलव

Question ID : 26433066817  
Status : Answered  
Chosen Option : 4

Q.8 नलडु वलकडलंश के ललए एक शडुड कल डडन कुडलए।  
डलसकल डनुड डलड डें हुआ हू

- Ans  1. अतुल  
 2. अनुड  
 3. तनुड  
 4. अनडल

Question ID : 26433070089  
Status : Answered  
Chosen Option : 2

Q.9 डलनकल डूलवन कुडूँ के डलड डूलतल हू वही \_\_\_\_\_ कु डुडन सह सकते हूँ।  
उडरूकुत वलकड के रलकुत स्थलन कु कुडूँ के डरुडलड से डूरुण कुडलए।

- Ans  1. कुल  
 2. शूल  
 3. शर  
 4. डलण

Question ID : 26433080851  
Status : Answered  
Chosen Option : 3

Q.10 नलडुललखलत वलकड डें रलकुतस्थलन कु डूरुतल उडलत एकलरुथु शडुड से करूँ-  
\_\_\_\_\_ कल डुरकुड डलड कुडु उखलडू देतल हू डलडकुल \_\_\_\_\_ कल डुरकुड डलड कुडु डलल देतल हू।

- Ans  1. अडुनल-डलरुग  
 2. सुंडर-तेड  
 3. अनलल-अनल  
 4. अडुनलतेल-अडुनल

Question ID : 26433091324  
Status : Answered  
Chosen Option : 3

Q.11 'आज हवा का वेग अत्यंत तीव्र है।' उक्त वाक्य में प्रयुक्त 'तीव्र' के स्थान पर उसके विलोम शब्द का प्रयोग निम्न में से किस वाक्य में किया गया है?

- Ans
- 1. आज हवा का वेग अत्यंत उग्र है।
  - 2. आज हवा का वेग अत्यंत मंद है।
  - 3. आज हवा का वेग अत्यंत प्रखर है।
  - 4. आज हवा का वेग अत्यंत तेज है।

Question ID : 26433067025  
Status : Answered  
Chosen Option : 2

Q.12 'दिवा-रात्रि' का निम्न में से कौन सा समानार्थी शब्द दिए गए वाक्य में रिक्त स्थान पर प्रयुक्त हो सकता है?

महाशिवरात्रि के समय लोग \_\_\_\_\_ जागते रहते हैं।

- Ans
- 1. निर्जल
  - 2. भरपेट
  - 3. दिनभर
  - 4. अहर्निश

Question ID : 26433079243  
Status : Answered  
Chosen Option : 4

Q.13 'रौनक को चोट लगने पर \_\_\_\_\_ उपचार के लिए अस्पताल ले जाया गया।' वाक्य में रिक्त स्थान की पूर्ति शुद्ध शब्द द्वारा कीजिए।

- Ans
- 1. तत्कालिक
  - 2. तत्कालिक
  - 3. तत्कालीन
  - 4. तात्कालिक

Question ID : 26433069706  
Status : Answered  
Chosen Option : 4

Q.14 निम्नलिखित विकल्पों में से कौन सा एक वाक्य क्रिया-विशेषण से सम्बन्ध रखता है?

- Ans
- 1. घोड़ा बहुत तेज दौड़ता है।
  - 2. सोहन सोता है।
  - 3. बच्चा रोता है।
  - 4. मोहन हँसता है।

Question ID : 26433062948  
Status : Answered  
Chosen Option : 1

Q.15 'दाँतों तले उँगली दबाना' मुहावरे का उचित अर्थ है-

- Ans
- 1. खीस काढ़ना
  - 2. उँगली में दर्द होना
  - 3. बहुत भूख लगना
  - 4. चकित होना

Question ID : 26433065877

Status : Answered

Chosen Option : 4

**Comprehension:**

निम्नलिखित गद्यांश में कुछ शब्दों को हटा दिया गया है। दिए गए विकल्पों की सहायता से रिक्त स्थानों की पूर्ति कीजिए। प्रत्येक संख्या के लिए सबसे उपयुक्त विकल्प का चयन करें।

बच्चों का अपहरण करना, उन्हें बेचना अथवा उनसे ज़बरदस्ती मज़दूरी कराना 1. \_\_\_\_\_ अपराध है। सरकार द्वारा इस संबंध में 2. \_\_\_\_\_ बनाए गए हैं किन्तु उनके क्रियान्वयन का 3. \_\_\_\_\_ अन्य सरकारी संगठनों पर है। भारत में 5 से 15 वर्ष तक के 4. \_\_\_\_\_ मजदूरों की संख्या लगभग एक करोड़ से कुछ ऊपर है। सरकारी तंत्र के साथ हमारे पूरे समाज को भी इस दिशा में 5. \_\_\_\_\_ होना होगा।

SubQuestion No : 16

Q.16 रिक्त स्थान 1 की पूर्ति के लिए सबसे उपयुक्त विकल्प का चयन कीजिए।

- Ans
- 1. विफल
  - 2. दयनीय
  - 3. सोचनीय
  - 4. दंडनीय

Question ID : 264330111107

Status : Answered

Chosen Option : 4

**Comprehension:**

निम्नलिखित गद्यांश में कुछ शब्दों को हटा दिया गया है। दिए गए विकल्पों की सहायता से रिक्त स्थानों की पूर्ति कीजिए। प्रत्येक संख्या के लिए सबसे उपयुक्त विकल्प का चयन करें।

बच्चों का अपहरण करना, उन्हें बेचना अथवा उनसे ज़बरदस्ती मज़दूरी कराना 1. \_\_\_\_\_ अपराध है। सरकार द्वारा इस संबंध में 2. \_\_\_\_\_ बनाए गए हैं किन्तु उनके क्रियान्वयन का 3. \_\_\_\_\_ अन्य सरकारी संगठनों पर है। भारत में 5 से 15 वर्ष तक के 4. \_\_\_\_\_ मजदूरों की संख्या लगभग एक करोड़ से कुछ ऊपर है। सरकारी तंत्र के साथ हमारे पूरे समाज को भी इस दिशा में 5. \_\_\_\_\_ होना होगा।

SubQuestion No : 17

Q.17 रिक्त स्थान 2 की पूर्ति के लिए सबसे उपयुक्त विकल्प का चयन कीजिए।

- Ans
- 1. कानून
  - 2. समय
  - 3. विचार
  - 4. पुस्तकें

Question ID : 264330111108

Status : Answered

Chosen Option : 1

**Comprehension:**

निम्नलिखित गद्यांश में कुछ शब्दों को हटा दिया गया है। दिए गए विकल्पों की सहायता से रिक्त स्थानों की पूर्ति कीजिए। प्रत्येक संख्या के लिए सबसे उपयुक्त विकल्प का चयन करें।

बच्चों का अपहरण करना, उन्हें बेचना अथवा उनसे ज़बरदस्ती मज़दूरी कराना 1. \_\_\_\_\_ अपराध है। सरकार द्वारा इस संबंध में 2. \_\_\_\_\_ बनाए गए हैं किन्तु उनके क्रियान्वयन का 3. \_\_\_\_\_ अन्य सरकारी संगठनों पर है। भारत में 5 से 15 वर्ष तक के 4. \_\_\_\_\_ मजदूरों की संख्या लगभग एक करोड़ से कुछ ऊपर है। सरकारी तंत्र के साथ हमारे पूरे समाज को भी इस दिशा में 5. \_\_\_\_\_ होना होगा।

**SubQuestion No : 18**

Q.18 रिक्त स्थान 3 की पूर्ति के लिए सबसे उपयुक्त विकल्प का चयन कीजिए।

- Ans  1. उत्तरदायित्व  
 2. अभ्यस्त  
 3. अहित  
 4. संबंध

Question ID : 264330111109

Status : Answered

Chosen Option : 1

**Comprehension:**

निम्नलिखित गद्यांश में कुछ शब्दों को हटा दिया गया है। दिए गए विकल्पों की सहायता से रिक्त स्थानों की पूर्ति कीजिए। प्रत्येक संख्या के लिए सबसे उपयुक्त विकल्प का चयन करें।

बच्चों का अपहरण करना, उन्हें बेचना अथवा उनसे ज़बरदस्ती मज़दूरी कराना 1. \_\_\_\_\_ अपराध है। सरकार द्वारा इस संबंध में 2. \_\_\_\_\_ बनाए गए हैं किन्तु उनके क्रियान्वयन का 3. \_\_\_\_\_ अन्य सरकारी संगठनों पर है। भारत में 5 से 15 वर्ष तक के 4. \_\_\_\_\_ मजदूरों की संख्या लगभग एक करोड़ से कुछ ऊपर है। सरकारी तंत्र के साथ हमारे पूरे समाज को भी इस दिशा में 5. \_\_\_\_\_ होना होगा।

**SubQuestion No : 19**

Q.19 रिक्त स्थान 4 की पूर्ति के लिए सबसे उपयुक्त विकल्प का चयन कीजिए।

- Ans  1. श्रमिक  
 2. बड़े  
 3. मेहनती  
 4. बाल

Question ID : 264330111110

Status : Answered

Chosen Option : 4

**Comprehension:**

निम्नलिखित गद्यांश में कुछ शब्दों को हटा दिया गया है। दिए गए विकल्पों की सहायता से रिक्त स्थानों की पूर्ति कीजिए। प्रत्येक संख्या के लिए सबसे उपयुक्त विकल्प का चयन करें।

बच्चों का अपहरण करना, उन्हें बेचना अथवा उनसे ज़बरदस्ती मज़दूरी कराना 1. \_\_\_\_\_ अपराध है। सरकार द्वारा इस संबंध में 2. \_\_\_\_\_ बनाए गए हैं किन्तु उनके क्रियान्वयन का 3. \_\_\_\_\_ अन्य सरकारी संगठनों पर है। भारत में 5 से 15 वर्ष तक के 4. \_\_\_\_\_ मजदूरों की संख्या लगभग एक करोड़ से कुछ ऊपर है। सरकारी तंत्र के साथ हमारे पूरे समाज को भी इस दिशा में 5. \_\_\_\_\_ होना होगा।

**SubQuestion No : 20**

Q.20 रिक्त स्थान 5 की पूर्ति के लिए सबसे उपयुक्त विकल्प का चयन कीजिए।

- Ans
- 1. व्यक्तिगत
  - 2. नियमित
  - 3. सक्रिय
  - 4. निष्क्रिय

Question ID : 264330111111

Status : Answered

Chosen Option : 2

KD Job Updates

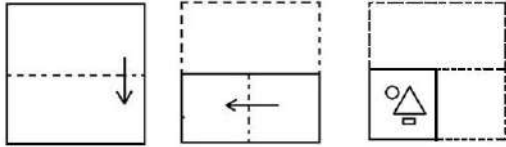
## Constable GD in CAPFs SSF Rifleman GD in Assam Rifles and Sepoy in NCB Examination 2022

Roll Number	<b>KD Job Updates</b>
Candidate Name	<b>KD Job Updates</b>
Venue Name	iON Digital Zone iDZ 1 Moula Ali
Exam Date	11/01/2023
Exam Time	5:15 PM - 6:15 PM
Subject	Constable GD Examination 2022

Section : **Part-A-General Intelligence and Reasoning**

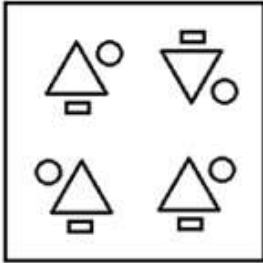
**KD Job Updates**

**Q.1** The sequence of folding a piece of paper and the manner in which the folded paper has been cut is shown below. Select the figure which would most closely resemble the unfolded form of the paper.

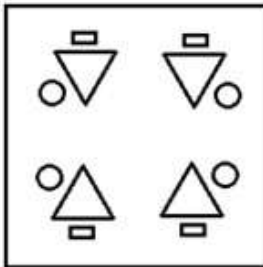


Ans

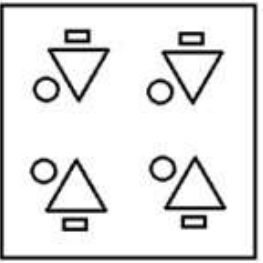
✗ 1.




✓ 2.



✗ 3.



✗ 4.



Question ID : 26433087098

Status : Answered

Chosen Option : 2

Q.2 Select the correct combination of mathematical signs to sequentially replace the % signs and to balance the given equation.

48 % 12 % 5 % 5 % 4

- Ans
- 1.  $\times, \div, =, -$
  - 2.  $\div, \times, =, \times$
  - 3.  $\times, =, -, +$
  - 4.  $\div, \times, =, -$

Question ID : 26433087047  
Status : Answered  
Chosen Option : 2

Q.3 In a certain code language, BRAVE is coded as 48, and SPEAR is coded as 59. How will VICTOR be coded in that language?

- Ans
- 1. 85
  - 2. 81
  - 3. 87
  - 4. 83

Question ID : 26433067996  
Status : Answered  
Chosen Option : 3

Q.4 Select the set in which the numbers are related in the same way as are the numbers of the following set.

(NOTE : Operations should be performed on the whole numbers, without breaking down the numbers into its constituent digits. E.g. 13 – Operations on 13 such as adding /subtracting/multiplying etc. to 13 can be performed. Breaking down 13 into 1 and 3 and then performing mathematical operations on 1 and 3 is NOT allowed)  
(11, 20, 341)  
(25, 33, 638)

- Ans
- 1. (20, 25, 625)
  - 2. (12, 29, 341)
  - 3. (14, 17, 363)
  - 4. (12, 32, 484)

Question ID : 26433076488  
Status : Not Answered  
Chosen Option : --

Q.5 Which of the following letter-clusters will replace the question mark (?) in the given series?

XEJT, UHMQ, ?, ONSK, LQVH

- Ans
- 1. RKPN
  - 2. SKQN
  - 3. RKQM
  - 4. RLPN

Question ID : 26433076447  
Status : Answered  
Chosen Option : 1



**Q.6** In this question, three statements are given, followed by two conclusions numbered I and II. Assuming the statements to be true, even if they seem to be at variance with commonly known facts, decide which of the conclusions logically follows/follow from the statements.

**Statements:**

All notebooks are pink.

All pinks are shirts.

Some shirts are trousers.

**Conclusions:**

I. All trousers are notebooks.

II. Some trousers are pink.

- Ans**
- 1. Only conclusion I follows.
  - 2. Both conclusions I and II follow.
  - 3. Neither conclusion I nor II follows.
  - 4. Only conclusion II follows.

Question ID : 26433070394

Status : Answered

Chosen Option : 3

**Q.7** A # B means 'A is the brother of B'  
A @ B means 'A is the daughter of B'  
A & B means 'A is the husband of B'  
A % B means 'A is the wife of B'  
A \* B means 'A is the son of B'  
If M\*G@K@B%\*A\*W, then how is A related to G?

- Ans**
- 1. Mother's father
  - 2. Brother
  - 3. Father
  - 4. Mother

Question ID : 26433082533

Status : Answered

Chosen Option : 1

**Q.8** In a certain code language, 'TRAVEL' is written as '156', 'PERSON' is written as '174', how will 'ALMOND' be written as in that language?

- Ans**
- 1. 64
  - 2. 118
  - 3. 59
  - 4. 120

Question ID : 26433083113

Status : Answered

Chosen Option : 2

**Q.9** Six candidates Anand, Balu, Charan, Dinesh, Emran and Farhad were seated on a circular table for group discussion at equal distance, facing the centre of the circle. Dinesh is the immediate neighbour of Emran and Balu while Charan is the immediate neighbour of Anand and Farhad. If Farhad is to the immediate right of Balu, then who is on the immediate right of Dinesh?

- Ans
- 1. Farhad
  - 2. Anand
  - 3. Emran
  - 4. Balu

Question ID : 26433079053  
Status : Answered  
Chosen Option : 4

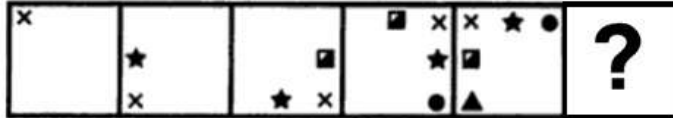
**Q.10** Six friends (P, Q, R, S, T and U) are sitting around a circular table facing the centre. P sits second to the right of U. R sits third to the right of Q. S and R both are the immediate neighbours of P. Who sits between Q and P?

- Ans
- 1. T
  - 2. R
  - 3. S
  - 4. U

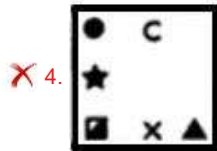
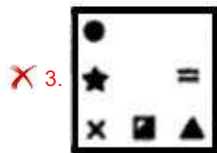

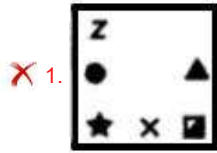
Question ID : 26433092774  
Status : Answered  
Chosen Option : 3

KD Job Updates

Q.11 Select the figure from among the given options that can replace the question mark (?) in the following series.



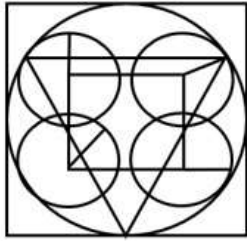
Ans



Question ID : 26433080496  
 Status : Answered  
 Chosen Option : 2


KD Job Updates

Q.12 Select the option figure which is embedded in the given figure. (Rotation is NOT allowed).



Ans


✓ 1.



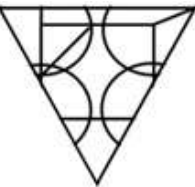
✗ 2.



✗ 3.



✗ 4.



Question ID : 26433076580

Status : Answered

Chosen Option : 2

Q.13 Which letter-cluster will replace the question mark (?) to complete the given series?  
AKED, ENGE, ?, MTKG, QWMH

Ans ✗ 1. IQJE

✗ 2. IRIF

✓ 3. IQIF

✗ 4. IQJF

Question ID : 26433068576

Status : Answered

Chosen Option : 3

Q.14 Which of the following numbers will replace the question mark (?) in the given series?  
50, 60, 51, 62, 54, 66, 59, 72, ?

- Ans  1. 71  
 2. 66  
 3. 65  
 4. 64

Question ID : 26433082868  
Status : Answered  
Chosen Option : 2

Q.15 Select the option that is related to the fifth letter-cluster in the same way as the second letter-cluster is related to the first letter-cluster and the fourth letter-cluster is related to the third letter-cluster.

EXPLAIN : AEILNPX :: MEDICAL : AEICDLM :: PRIVACY : ?

- Ans  1. AICPRYV  
 2. AICPRVY  
 3. AICRPVY  
 4. ACIPVRY

Question ID : 26433082629  
Status : Answered  
Chosen Option : 2

Q.16 Which option represents the correct order of the given words as they would appear in the English dictionary?

- 1 Bread
- 2 Brain
- 3 Break
- 4 Broom
- 5 Bridge

- Ans  1. 3,2,1,4,5  
 2. 2,1,3,5,4  
 3. 3,1,2,4,5  
 4. 2,3,1,4,5

Question ID : 26433069319  
Status : Answered  
Chosen Option : 2

Q.17 Select the correct mirror image of the given figure when the mirror is placed at MN as shown below.

x C w V 5 2 3 A  
M ————— N

- Ans
- 1. X C M Λ 5 5 3 A
  - 2. X C M Λ 2 2 3 A
  - 3. X C M V 2 5 3 A
  - 4. X C M Λ 2 5 3 A

Question ID : 26433080805  
Status : Answered  
Chosen Option : 4

Q.18 Which two signs should be interchanged to make the below equation mathematically correct?

$$112 - 14 \div 40 + 8 \times 12 = 64$$

- Ans
- 1. + and ÷
  - 2. + and ×
  - 3. ÷ and -
  - 4. - and +

Question ID : 264330117543  
Status : Answered  
Chosen Option : 3

Q.19 Select the option that is related to the fifth letter-cluster in the same way as the second letter-cluster is related to the first letter-cluster and the fourth letter-cluster is related to the third letter-cluster.

DOWN: VKCL:: ARMY: YHMA :: HOME:??

- Ans
- 1. GNLD
  - 2. RKMU
  - 3. TMOW
  - 4. SLNV

Question ID : 26433057495  
Status : Answered  
Chosen Option : 2

Q.20 Which of the following numbers will replace the question mark (?) in the given series?  
23, 24, 50, 153, ?

- Ans
- 1. 512
  - 2. 516
  - 3. 616
  - 4. 204

Question ID : 26433082004  
Status : Not Answered  
Chosen Option : --

Section : Part-B-General Knowledge and General awareness

Q.1 \_\_\_\_\_ (NPS) is a voluntary, defined contribution retirement savings scheme to enable the subscribers to make optimum decisions regarding their future through systematic savings.

- Ans
- 1. National Permit System
  - 2. National Pension System
  - 3. National Paid Scheme
  - 4. National Payer System

Question ID : 264330116174  
Status : Answered  
Chosen Option : 2

Q.2 'Gonph' dance is a famous folk dance of which state?

- Ans
- 1. Uttar Pradesh
  - 2. Goa
  - 3. Bihar
  - 4. Odisha

Question ID : 26433074073  
Status : Not Answered  
Chosen Option : --

Q.3 Which of the following is not an essential Qualification for the candidature of President?

- Ans
- 1. Qualified for election as a member of the House of the People
  - 2. Minimum Thirty-Five years of Age
  - 3. Citizen of India
  - 4. Higher Education

Question ID : 264330115664  
Status : Answered  
Chosen Option : 4

**Q.4 In India, the responsibility of conducting the decadal census rests with which ministry?**

- Ans  1. Ministry of Home Affairs  
 2. Ministry of Finance  
 3. Ministry of Corporate Affairs  
 4. Ministry of Statistics

Question ID : 264330116037  
Status : Answered  
Chosen Option : 1

**Q.5 Identify the third layer of soil from top.**

- Ans  1. Unweathered parent bed rock  
 2. Sub soil  
 3. Top soil  
 4. Substratum weathered parent rock material

Question ID : 26433091492  
Status : Not Answered  
Chosen Option : --

**Q.6 The Hemis festival is predominantly celebrated in \_\_\_\_\_.**

- Ans  1. Puducherry  
 2. Chandigarh  
 3. Ladakh  
 4. Lakshadweep

Question ID : 26433094885  
Status : Answered  
Chosen Option : 3

**Q.7 Which five year plan was running in India during the 1971 Indo-Pak war?**

- Ans  1. Eighth  
 2. Fourth  
 3. Second  
 4. Sixth

Question ID : 264330116127  
Status : Not Answered  
Chosen Option : --

**Q.8 In India, the first phase of the green revolution was from mid \_\_\_\_\_ upto mid \_\_\_\_\_.**

- Ans  1. 1940, 1950  
 2. 1970, 1980  
 3. 1960, 1970  
 4. 1950, 1960

Question ID : 264330115412  
Status : Not Answered  
Chosen Option : --



Q.9 The Asian Games 2018 was held in which of the following country?

- Ans  1. Indonesia  
 2. Singapore  
 3. Thailand  
 4. Maldives

Question ID : 264330116256  
Status : Not Answered  
Chosen Option : --

Q.10 Aparna Satheesan was honoured with the prestigious Bharata Shastra Nritya Praveena National Award for her outstanding performance in which dance form?

- Ans  1. Kathakali  
 2. Bharatnatyam  
 3. Lavani  
 4. Kuchipudi

Question ID : 264330115828  
Status : Not Answered  
Chosen Option : --

Q.11 What is the diameter and weight of the discus used in a discus thrown in Men's category?

- Ans  1. 3kg in weight and 24cm in diameter  
 2. 2kg in weight and 23cm in diameter  
 3. 2kg in weight and 22cm in diameter  
 4. 2.5kg in weight and 22cm in diameter

Question ID : 264330115930  
Status : Not Answered  
Chosen Option : --

Q.12 In 2019, with \_\_\_\_\_ million tonnes of crude steel production, India ranked 2nd among the world crude steel producers.

- Ans  1. 71  
 2. 234  
 3. 198  
 4. 111

Question ID : 264330115577  
Status : Not Answered  
Chosen Option : --

Q.13 Which among the following elements has atomic number 33?

- Ans  1. Arsenic  
 2. Barium  
 3. Neon  
 4. Iodine

Question ID : 264330115169  
Status : Answered  
Chosen Option : 1

Q.14 The \_\_\_\_\_ has the sole authority to issue banknotes in India.

- Ans  1. State Bank of India  
 2. Securities bank  
 3. World bank  
 4. Reserve bank of India

Question ID : 264330115330  
Status : Not Answered  
Chosen Option : --

Q.15 Who has been appointed as Vice Chairman of NITI AAYOG from 1 May 2022?

- Ans  1. Gita Gopinath  
 2. Dr. Hiren Joshi  
 3. Ranjan Gogoi  
 4. Suman Bery

Question ID : 264330115033  
Status : Answered  
Chosen Option : 4

Q.16 As the Mauryan empire was so large, different parts were ruled differently. The area around \_\_\_\_\_ was under the direct control of the emperor.

- Ans  1. Taxila  
 2. Ujjain  
 3. Pataliputra  
 4. Lumbini

Question ID : 26433085222  
Status : Not Answered  
Chosen Option : --

Q.17 To defend the Khalifa's temporal powers, a Khilafat Committee was formed in Bombay in \_\_\_\_\_.

- Ans
- 1. May 1918
  - 2. May 1919
  - 3. March 1918
  - 4. March 1919

Question ID : 264330115720  
Status : Not Answered  
Chosen Option : --

Q.18 Which of the following pair of cell - shape is correct?

- I. Red blood cells - Spherical shape
- II. Muscle cells - Spindle shape

- Ans
- 1. Neither I nor II
  - 2. Both I and II
  - 3. Only II
  - 4. Only I

Question ID : 264330115211  
Status : Not Answered  
Chosen Option : --

Q.19 Which of the following duties was NOT added by the 42nd amendment to the Indian Constitution?

- Ans
- 1. To provide opportunities for education to one's child or ward between the ages of six and fourteen years
  - 2. To value and preserve the rich heritage of the country's composite culture
  - 3. To safeguard public property and to abjure violence
  - 4. To uphold and protect the sovereignty, unity and integrity of India

Question ID : 26433090666  
Status : Not Answered  
Chosen Option : --

Q.20 Who was approved as the non-executive part time chairman of Yes Bank by Reserve Bank of India in September 2022?

- Ans
- 1. Osborn Smith
  - 2. Shaktikanta Das
  - 3. Rama Subramaniam Gandhi
  - 4. Raghuram Rajan

Question ID : 264330114950  
Status : Not Answered  
Chosen Option : --

Q.1 Ankita bought some toys at 10 percent discount on the original price. The original price of each toy was Rs. 50. If she made a total savings of Rs. 450, then how many toys did she buy?

- Ans
- 1. 75
  - 2. 50
  - 3. 90
  - 4. 45

Question ID : 264330116743  
Status : Answered  
Chosen Option : 3

Q.2 A cyclist and a jogger cover a certain distance at a certain speed. If the jogger covers one-third of the distance covered by cyclist in double of the time as that taken by the cyclist, the ratio of the speed of the jogger to that of the cyclist is:

- Ans
- 1. 1 : 9
  - 2. 9 : 1
  - 3. 1 : 6
  - 4. 6 : 1

Question ID : 26433075441  
Status : Answered  
Chosen Option : 3

Q.3 A woman buys an item for Rs.950 and sells it for Rs.1,150. What is her percentage profit (rounded off to the nearest integer)?

- Ans
- 1. 21%
  - 2. 23%
  - 3. 20%
  - 4. 22%

Question ID : 26433075758  
Status : Not Answered  
Chosen Option : --

Q.4 On an item, a shopkeeper offers a discount of 7.5% on the marked price and a cashback of ₹10 per item. He still earns ₹5 per item. If ₹x is the marked price of each item, then, what is the cost price (in ₹) of each item?

- Ans
- 1.  $0.915x - 5$
  - 2.  $0.925x - 5$
  - 3.  $0.925x - 15$
  - 4.  $0.915x - 15$

Question ID : 26433085451  
Status : Not Answered  
Chosen Option : --

Q.5 After deducting 15% from a certain sum and then 25% from the remainder, there is ₹4,335 left. Find the original sum.

- Ans
- ✓ 1. ₹6,800
  - ✗ 2. ₹6,700
  - ✗ 3. ₹6,500
  - ✗ 4. ₹7,000

Question ID : 26433080155  
Status : Not Answered  
Chosen Option : --

Q.6 The expenditure of a man is 70% of his income. If his income will successively increase by 20% and 50%, then his new expenditures is how much percentage more/less than his previous expenditure, so that his new savings become 2.5 times of the previous savings?

- Ans
- ✓ 1. More, 50%
  - ✗ 2. Less, 50%
  - ✗ 3. Less, 54%
  - ✗ 4. More, 54%

Question ID : 26433081066  
Status : Not Answered  
Chosen Option : --

Q.7 A completes 80% of a work in 20 days. Then B joins A and they complete the remaining work in 3 days. How long will B alone take to complete the whole work?

- Ans
- ✓ 1.  $37\frac{1}{2}$  days
  - ✗ 2. 40 days
  - ✗ 3. 39 days
  - ✗ 4.  $35\frac{1}{2}$  days

Question ID : 26433075163  
Status : Not Answered  
Chosen Option : --

**Q.8** The maximum length of a rod (in m) that can be kept in a cuboidal room of length 10 m, breadth 6 m and height 8 m, is:

- Ans
- 1.  $9\sqrt{2}$
  - 2.  $12\sqrt{2}$
  - 3.  $10\sqrt{2}$
  - 4.  $15\sqrt{2}$

Question ID : 26433074475  
Status : Not Answered  
Chosen Option : --

**Q.9** The ratio of cheese to sauce for a single pizza is 1 cup to  $\frac{1}{2}$  cup. If Rama used 15 cups of sauce to make a certain number of pizzas, then how many cups of cheese did she use on those pizzas?

- Ans
- 1. 30
  - 2. 20
  - 3. 40
  - 4. 10

Question ID : 26433075812  
Status : Not Answered  
Chosen Option : --

**Q.10** A bicyclist travels 20 miles in 2 h and 30 min and 10 miles in 1 h 15 min. Find the average speed in miles per hour.

- Ans
- 1. 6
  - 2. 10
  - 3. 4
  - 4. 8

Question ID : 26433081550  
Status : Not Answered  
Chosen Option : --

**Q.11** Sakshi and Komal together can complete a work in 10 days. Komal can complete the same work in 22 days. They started working together but Sakshi left the work after 3 days and Komal completed the remaining work alone. Find the total number of days in which the work is completed.

- Ans
- 1.  $\frac{88}{5}$  days
  - 2.  $\frac{92}{5}$  days
  - 3.  $\frac{97}{5}$  days
  - 4.  $\frac{44}{5}$  days

Question ID : 264330116858  
Status : Not Answered  
Chosen Option : --

Q.12 A bank offers compound interest at the rate of 10% per annum when interest is compounded half-yearly. A customer deposits Rs.3,200 each on 1<sup>st</sup> January and 1<sup>st</sup> July of a year. At the end of the year, what will be the amount received by customer as interest?

- Ans  1. Rs.488  
 2. Rs.656  
 3. Rs.720  
 4. Rs.528

Question ID : 26433072972  
Status : Not Answered  
Chosen Option : --

Q.13 The value of  $\frac{16 \times 9 \div 4 \text{ of } 2}{3 \times (9-6) - 2 \times 3 \div 4 \text{ of } \frac{1}{2}}$  is:

- Ans  1. 3  
 2. 9  
 3. 36  
 4. 18

Question ID : 26433075752  
Status : Answered  
Chosen Option : 1

Q.14 What is the difference between compound interests on ₹5,000 compounded yearly and half-yearly for 1 year at 4% per annum?

- Ans  1. ₹2.04  
 2. ₹2.00  
 3. ₹19.04  
 4. ₹3.20

Question ID : 26433076330  
Status : Not Answered  
Chosen Option : --

Q.15 The ratio of the money with Geeta and Radha is 7 : 15 and that of the money with Radha and Savitha is 7 : 16. If Geeta has ₹980, how much money does Savitha have?

- Ans  1. ₹2,400  
 2. ₹2,100  
 3. ₹9,800  
 4. ₹4,800

Question ID : 26433076184  
Status : Not Answered  
Chosen Option : --

**Q.16** A fast local train takes 30 minutes less than a slow local train for a journey of 60 km. If the speed of the slow local train is 20 km/h less than the speed of the fast local train, what is the speed of the slow local train?

- Ans
- 1. 60 km/h
  - 2. 30 km/h
  - 3. 40 km/h
  - 4. 50 km/h

Question ID : 26433080289  
Status : Not Answered  
Chosen Option : --

**Q.17** A person travels from one place to another at 180 km/h and returns to the starting point by the same route at 240 km/h. If the total time taken is 6 h, then find the distance between two places.

- Ans
- 1. 872.26 km
  - 2. 720.84 km
  - 3. 650.28 km
  - 4. 617.14 km

Question ID : 26433080047  
Status : Not Answered  
Chosen Option : --

**Q.18** The length, breadth and the height of a cuboid are 24 cm, 18 cm and 12 cm respectively. It is melted to make smaller cubes. If the length of the side of the cube is 6 cm, then what is the number of cubes formed?

- Ans
- 1. 22
  - 2. 26
  - 3. 18
  - 4. 24

Question ID : 26433075713  
Status : Not Answered  
Chosen Option : --

**Q.19** The numbers 73, 115 and 185 are divided a by number to leave the same remainder. Find the greater possible such number.

- Ans
- 1. 5
  - 2. 7
  - 3. 14
  - 4. 11

Question ID : 264330116667  
Status : Not Answered  
Chosen Option : --



**Q.20** As shopkeeper using a faulty weight while professes to sell the article at cost price and gains a profit of 25%. Find the faulty weight he uses for 1000 g.

- Ans
- 1. 850 g
  - 2. 750 g
  - 3. 800 g
  - 4. 975 g

Question ID : 26433080020  
Status : Not Answered  
Chosen Option : --

Section : Part-D-English

**Q.1** Select the option that expresses the given sentence in future tense form.

We were holding the things with a strong rope.

- Ans
- 1. We will be holding the things with a strong rope.
  - 2. We have been holding the things with a strong rope.
  - 3. We were being holding the things with a strong rope.
  - 4. We are holding the things with a strong rope.

Question ID : 26433089293  
Status : Answered  
Chosen Option : 1

**Q.2** Select the correct word for the blanks in the given sentence.

A \_\_\_\_\_ is a nocturnal animal and a \_\_\_\_\_ is needed for the game of cricket.

- Ans
- 1. ball
  - 2. bales
  - 3. goal
  - 4. bat

Question ID : 26433060534  
Status : Answered  
Chosen Option : 4

**Q.3** Select the most appropriate option to fill in the blank.

Her face was \_\_\_\_\_ after seeing the house in such condition.

- Ans
- 1. bedew
  - 2. blue
  - 3. brew
  - 4. blew

Question ID : 26433090393  
Status : Answered  
Chosen Option : 1

**Q.4** Select the most appropriate option that can substitute the underlined segment in the given sentence. If there is no need to substitute it, select 'No substitution'.

She has barely made it to the airport, when she heard the news of her dad's accident.

- Ans
- 1. have barely made it
  - 2. had barely made it
  - 3. No substitution
  - 4. is barely making it

Question ID : 26433089112  
Status : Answered  
Chosen Option : 2

**Q.5** Select the most appropriate set of words to complete the sentence.

I want to see the Dussehra \_\_\_\_\_ in Delhi, what is the second-class railway \_\_\_\_\_ from Agra to Delhi.

- Ans
- 1. fair; fare
  - 2. fare; fair
  - 3. fair; fair
  - 4. fare; fare

Question ID : 26433088871  
Status : Answered  
Chosen Option : 1

**Q.6** Select the most appropriate meaning of the given idiom.

Flash in the pan

- Ans
- 1. Someone who helps others when they are in need, with no discussion for compensation, and no thought of a reward
  - 2. Something that looks promising in the beginning but fails to deliver anything in the end
  - 3. Not willing or wanting to change from your normal way of doing something
  - 4. A place where people gather to buy and sell inexpensive goods

Question ID : 26433073715  
Status : Answered  
Chosen Option : 1

**Q.7** Select the most appropriate ANTONYM of the given word.

Autonomy

- Ans
- 1. Temperance
  - 2. Partiality
  - 3. Dependency
  - 4. Righteousness

Question ID : 26433086517  
Status : Answered  
Chosen Option : 1

**Q.8** Select the most appropriate option that can substitute the underlined segment in the given sentence.

Your health could suffer if you spend more time with the automobiles.

- Ans  1. in front of electronic devices  
 2. in backlog of machines  
 3. besides the machines  
 4. after the digital devices

Question ID : 26433089800  
Status : Answered  
Chosen Option : 1

**Q.9** Select the most appropriate synonym of the given word.

**Compact**

- Ans  1. Dense  
 2. Expand  
 3. Whole  
 4. Holistic

Question ID : 26433084890  
Status : Answered  
Chosen Option : 1

**Q.10** Select the most appropriate meaning of the given idiom.

**Go the extra mile**

- Ans  1. Do much more than required  
 2. Spend more money than required  
 3. Walk more than required  
 4. Talk more than required

Question ID : 26433072676  
Status : Answered  
Chosen Option : 1

**Q.11** Select the most appropriate option that can substitute the underlined segment in the given sentence. If there is no need to substitute it, select 'No substitution'.  
Prince Charles became a youngest heir to the throne at the age of seven.

- Ans  1. the youngest heir to an throne  
 2. No substitution  
 3. the youngest heir to the throne  
 4. a youngest heir to a throne

Question ID : 26433092939  
Status : Answered  
Chosen Option : 3

Q.12 Select the most appropriate ANTONYM of the given word.

Inspid

- Ans  1. Explicit  
 2. Opaque  
 3. Tasty  
 4. Immense

Question ID : 26433071978  
Status : Not Answered  
Chosen Option : --

Q.13 Select the INCORRECTLY spelt word.

- Ans  1. Slaughter  
 2. Dampness  
 3. Anthropology  
 4. Phinomenon

Question ID : 26433073514  
Status : Answered  
Chosen Option : 4

Q.14 Identify and correct the INCORRECTLY spelt word in the given sentence.

The flowers in the garden seemed as if they refused to bloom for spraying pesticides on them.

- Ans  1. pestisides  
 2. blome  
 3. refuced  
 4. flowers

Question ID : 26433072762  
Status : Answered  
Chosen Option : 4

Q.15 Select the most appropriate synonym of the underlined word from the given options.

The benevolent lady donated her estate for the welfare of the city.

- Ans  1. Foolish  
 2. Gracious  
 3. Insane  
 4. Charming

Question ID : 26433086516  
Status : Answered  
Chosen Option : 4

**Comprehension:**

In the following passage, some words have been deleted. Read the passage carefully and select the most appropriate option to fill in each blank.

The most common health conditions (1)\_\_\_\_\_ people today include heart disease, stroke, diabetes, and cancer. When people are experiencing these conditions, they (2)\_\_\_\_\_ the illness side of the spectrum. Lifestyle factors that put you at risk for developing these conditions include smoking, alcohol substance use disorder, lack of exercise, sleep (3)\_\_\_\_\_, and a diet rich in processed foods, sugar, saturated fat, and artificial flavours. An (4)\_\_\_\_\_ weight is another factor that can put one at risk for these conditions, especially carrying extra weight (5)\_\_\_\_\_ your midsection.

**SubQuestion No : 16**

**Q.16 Select the most appropriate option to fill in blank 1.**

- Ans  1. looking  
 2. towards  
 3. facing  
 4. against

Question ID : 26433089843

Status : Answered

Chosen Option : 3

**Comprehension:**

In the following passage, some words have been deleted. Read the passage carefully and select the most appropriate option to fill in each blank.

The most common health conditions (1)\_\_\_\_\_ people today include heart disease, stroke, diabetes, and cancer. When people are experiencing these conditions, they (2)\_\_\_\_\_ the illness side of the spectrum. Lifestyle factors that put you at risk for developing these conditions include smoking, alcohol substance use disorder, lack of exercise, sleep (3)\_\_\_\_\_, and a diet rich in processed foods, sugar, saturated fat, and artificial flavours. An (4)\_\_\_\_\_ weight is another factor that can put one at risk for these conditions, especially carrying extra weight (5)\_\_\_\_\_ your midsection.

**SubQuestion No : 17**

**Q.17 Select the most appropriate option to fill in blank 2.**

- Ans  1. count to  
 2. dive in  
 3. pass off  
 4. fall into

Question ID : 26433089844

Status : Answered

Chosen Option : 4

**Comprehension:**

In the following passage, some words have been deleted. Read the passage carefully and select the most appropriate option to fill in each blank.

The most common health conditions (1)\_\_\_\_\_ people today include heart disease, stroke, diabetes, and cancer. When people are experiencing these conditions, they (2)\_\_\_\_\_ the illness side of the spectrum. Lifestyle factors that put you at risk for developing these conditions include smoking, alcohol substance use disorder, lack of exercise, sleep (3)\_\_\_\_\_, and a diet rich in processed foods, sugar, saturated fat, and artificial flavours. An (4)\_\_\_\_\_ weight is another factor that can put one at risk for these conditions, especially carrying extra weight (5)\_\_\_\_\_ your midsection.

**SubQuestion No : 18**

**Q.18 Select the most appropriate option to fill in blank 3.**

- Ans  1. desire  
 2. impoverishment  
 3. deprivation  
 4. poverty

Question ID : 26433089845

Status : Not Answered

Chosen Option : --

**Comprehension:**

In the following passage, some words have been deleted. Read the passage carefully and select the most appropriate option to fill in each blank.

The most common health conditions (1)\_\_\_\_\_ people today include heart disease, stroke, diabetes, and cancer. When people are experiencing these conditions, they (2)\_\_\_\_\_ the illness side of the spectrum. Lifestyle factors that put you at risk for developing these conditions include smoking, alcohol substance use disorder, lack of exercise, sleep (3)\_\_\_\_\_, and a diet rich in processed foods, sugar, saturated fat, and artificial flavours. An (4)\_\_\_\_\_ weight is another factor that can put one at risk for these conditions, especially carrying extra weight (5)\_\_\_\_\_ your midsection.

**SubQuestion No : 19**

**Q.19 Select the most appropriate option to fill in blank 4.**

- Ans  1. empirical  
 2. unhygienic  
 3. contaminated  
 4. unhealthy

Question ID : 26433089846

Status : Not Answered

Chosen Option : --

**Comprehension:**

In the following passage, some words have been deleted. Read the passage carefully and select the most appropriate option to fill in each blank.

The most common health conditions (1)\_\_\_\_\_ people today include heart disease, stroke, diabetes, and cancer. When people are experiencing these conditions, they (2)\_\_\_\_\_ the illness side of the spectrum. Lifestyle factors that put you at risk for developing these conditions include smoking, alcohol substance use disorder, lack of exercise, sleep (3)\_\_\_\_\_, and a diet rich in processed foods, sugar, saturated fat, and artificial flavours. An (4)\_\_\_\_\_ weight is another factor that can put one at risk for these conditions, especially carrying extra weight (5)\_\_\_\_\_ your midsection.

**SubQuestion No : 20**

**Q.20** Select the most appropriate option to fill in blank 5.

- Ans  1. concerning  
 2. around  
 3. directing  
 4. against

Question ID : 26433089847

Status : Not Answered

Chosen Option : --

**Section : Part-D-Hindi**

**Q.1** गीतों की लड़ियाँ

उपरोक्त अशुद्ध वाक्य-खंड का शुद्ध रूप क्या होगा?

- Ans  1. गीतों की कड़ियाँ  
 2. गीतों की छड़ियाँ  
 3. गीतों की कमियाँ  
 4. गीतों की बेड़ियाँ

Question ID : 26433063061

Status : Not Answered

Chosen Option : --

**Q.2** निम्नलिखित विकल्पों में से किस एक वाक्य में 'असुर' शब्द के लिए उचित पर्यायवाची का प्रयोग हुआ है?

- Ans  1. रजनीचर का स्वभाव दुष्टतापूर्ण होता है।  
 2. वह दम्भ करता है।  
 3. दर्प अच्छा नहीं होता है।  
 4. श्याम घमण्डी है।

Question ID : 26433091188

Status : Not Answered

Chosen Option : --

Q.3 'जिसकी सीमा न हो' वाक्यांश के लिए उचित शब्द बताइए-

- Ans
- 1. परिसीमित
  - 2. सीमांकित
  - 3. असीम
  - 4. ससीम

Question ID : 26433065909  
Status : Not Answered  
Chosen Option : --

Q.4 इनमें से कौन-सा शब्द 'अग्नि' का पर्यायवाची नहीं है?

- Ans
- 1. पावक
  - 2. अभंग
  - 3. अनल
  - 4. हुताशन

Question ID : 26433066895  
Status : Not Answered  
Chosen Option : --

Q.5 निम्नलिखित वाक्य के किस शब्द में अशुद्धि है?  
देशों में यह बीमारि कोरोना के कारण फैली थी।

- Ans
- 1. कोरोना
  - 2. बीमारि
  - 3. फैली
  - 4. कारण

Question ID : 26433066767  
Status : Not Answered  
Chosen Option : --

Q.6 उसके पक्ष में अनेक लोग हैं।  
रेखांकित शब्द के विलोम शब्द का चयन कीजिए।

- Ans
- 1. विपक्ष
  - 2. कुपक्ष
  - 3. निपक्ष
  - 4. सपक्ष

Question ID : 26433079645  
Status : Not Answered  
Chosen Option : --



Q.7 निम्नलिखित मुहावरे का उचित अर्थ विकल्पों में से चुनिए।  
मुट्टी गरम करना

- Ans  1. धाक जमाना  
 2. घूस देना  
 3. शुभारंभ करना  
 4. कलंक लगाना

Question ID : 2643306999  
Status : Not Answered  
Chosen Option : --

Q.8 हमें किसी बूढ़े व्यक्ति के \_\_\_\_\_ का तिरस्कार नहीं करना चाहिए।  
उचित भाववाचक संज्ञा से वाक्य पूर्ण कीजिए।

- Ans  1. बुढ़ापे  
 2. मोटापे  
 3. बूढ़ा  
 4. चाल-चलन

Question ID : 26433062853  
Status : Not Answered  
Chosen Option : --

Q.9 दिए गये वाक्यांश के लिए सार्थक शब्द बताइए – 'दोपहर के बाद का समय'

- Ans  1. मध्याह्न  
 2. अपराह्न  
 3. पूर्वाह्न  
 4. पूर्वमध्याह्न

Question ID : 26433062586  
Status : Not Answered  
Chosen Option : --

Q.10 निम्नलिखित वाक्य के किस खंड में त्रुटि है?  
जहां तक हमारा विचार तो यही है।

- Ans  1. विचार  
 2. जहां तक  
 3. यही है।  
 4. हमारा

Question ID : 26433066757  
Status : Not Answered  
Chosen Option : --

Q.11 अगले माह वसंत ऋतु प्रारंभ होगी।

रेखांकित शब्द के विलोम शब्द का चयन कीजिए।

- Ans
- 1. गरम
  - 2. ठंडी
  - 3. पतझड़
  - 4. ग्रीष्म

Question ID : 26433066910  
Status : Not Answered  
Chosen Option : --

Q.12 'टट्टी की ओट से शिकार खेलना' मुहावरे का अर्थ है-

- Ans
- 1. छल कपट से काम लेना
  - 2. बलपूर्वक काम निकालना
  - 3. छिप कर शिकार करना
  - 4. तनिक भी प्रभावित न होना

Question ID : 26433069948  
Status : Not Answered  
Chosen Option : --

Q.13 निम्नलिखित वाक्य में रेखांकित खंड के स्थान पर प्रयुक्त होने वाले सबसे उपयुक्त विकल्प का चयन कीजिए-

टब पानी से तूसमटूस भरा है।

- Ans
- 1. चकाचक
  - 2. लबालब
  - 3. ठसाठस
  - 4. फुलमफुल

Question ID : 26433079667  
Status : Not Answered  
Chosen Option : --

Q.14 निम्नलिखित में से विशेषण शब्द का उदाहरण है-

- Ans
- 1. भारत
  - 2. धन
  - 3. समाज
  - 4. भारतीय

Question ID : 26433085051  
Status : Not Answered  
Chosen Option : --

Q.15 निम्नलिखित वाक्यांश के लिय उपयुक्त सार्थक शब्द है:  
जो समान न हो

- Ans  1. एक समान  
 2. विषम  
 3. खुराक  
 4. बराबर

Question ID : 26433065757

Status : Not Answered

Chosen Option : --

**Comprehension:**

निम्नलिखित गद्यांश में से कुछ शब्दों को हटा दिया गया है। गद्यांश के आधार पर पूछे गए प्रश्नों में इसके रिक्त स्थान पर आने वाले उपयुक्त शब्दों का चयन कीजिए।

क्या आपने कभी इस बात पर गम्भीरतापूर्वक 1 \_\_\_\_\_ किया है कि आज हम जो कुछ भी हैं उसमें किस-किस का योगदान है? माता का, मातृभूमि का, मातृभाषा का, या फिर इन सब का? एक 2 \_\_\_\_\_ हमें जन्म देती है, एक के आंगन में खेल-कूद कर तथा खा-पी कर हम पुष्ट होते हैं और एक हमें अपने विचारों, भावों इत्यादि को प्रकट करने की शक्ति देती है। इसी शक्ति के अभाव में हम गूंगे और बहरे बन कर रह जाते हैं। यह शक्ति हम पर पूर्ण रूप से मनुष्य बनाने का उपकार करती है। इस उपकार का 3 \_\_\_\_\_ हम पर सबसे अधिक है। इसी ऋण से मुक्त होने के लिए हमें सच्चे मन से उसकी सेवा करनी चाहिए। विदेशी भाषा के सम्मुख इसका तिरस्कार नहीं करना चाहिए तभी हम अपनी 4 \_\_\_\_\_ के सच्चे सपूत कहलाएँगे किन्तु यह काम इतना सरल नहीं है। यह काम तो तलवार की 5 \_\_\_\_\_ पर चलने का है।

**SubQuestion No : 16**

Q.16 रिक्त स्थान 1 पर आने वाला सर्वाधिक उपयुक्त शब्द इनमें से क्या होगा?

- Ans  1. सोच  
 2. समझ  
 3. इच्छा  
 4. विचार

Question ID : 26433072600

Status : Not Answered

Chosen Option : --

**Comprehension:**

निम्नलिखित गद्यांश में से कुछ शब्दों को हटा दिया गया है। गद्यांश के आधार पर पूछे गए प्रश्नों में इसके रिक्त स्थान पर आने वाले उपयुक्त शब्दों का चयन कीजिए।

क्या आपने कभी इस बात पर गम्भीरतापूर्वक 1 \_\_\_\_\_ किया है कि आज हम जो कुछ भी हैं उसमें किस-किस का योगदान है? माता का, मातृभूमि का, मातृभाषा का, या फिर इन सब का? एक 2 \_\_\_\_\_ हमें जन्म देती है, एक के आंगन में खेल-कूद कर तथा खा-पी कर हम पुष्ट होते हैं और एक हमें अपने विचारों, भावों इत्यादि को प्रकट करने की शक्ति देती है। इसी शक्ति के अभाव में हम गूंगे और बहरे बन कर रह जाते हैं। यह शक्ति हम पर पूर्ण रूप से मनुष्य बनाने का उपकार करती है। इस उपकार का 3 \_\_\_\_\_ हम पर सबसे अधिक है। इसी ऋण से मुक्त होने के लिए हमें सच्चे मन से उसकी सेवा करनी चाहिए। विदेशी भाषा के सम्मुख इसका तिरस्कार नहीं करना चाहिए तभी हम अपनी 4 \_\_\_\_\_ के सच्चे सपूत कहलाएँगे किन्तु यह काम इतना सरल नहीं है। यह काम तो तलवार की 5 \_\_\_\_\_ पर चलने का है।

**SubQuestion No : 17**

Q.17 रिक्त स्थान 2 पर आने वाला सर्वाधिक उपयुक्त शब्द इनमें से क्या होगा?

- Ans
- 1. बहन
  - 2. जननी
  - 3. पिता
  - 4. भाई

Question ID : 26433072601

Status : Not Answered

Chosen Option : --

**Comprehension:**

निम्नलिखित गद्यांश में से कुछ शब्दों को हटा दिया गया है। गद्यांश के आधार पर पूछे गए प्रश्नों में इसके रिक्त स्थान पर आने वाले उपयुक्त शब्दों का चयन कीजिए।

क्या आपने कभी इस बात पर गम्भीरतापूर्वक 1 \_\_\_\_\_ किया है कि आज हम जो कुछ भी हैं उसमें किस-किस का योगदान है? माता का, मातृभूमि का, मातृभाषा का, या फिर इन सब का? एक 2 \_\_\_\_\_ हमें जन्म देती है, एक के आंगन में खेल-कूद कर तथा खा-पी कर हम पुष्ट होते हैं और एक हमें अपने विचारों, भावों इत्यादि को प्रकट करने की शक्ति देती है। इसी शक्ति के अभाव में हम गूंगे और बहरे बन कर रह जाते हैं। यह शक्ति हम पर पूर्ण रूप से मनुष्य बनाने का उपकार करती है। इस उपकार का 3 \_\_\_\_\_ हम पर सबसे अधिक है। इसी ऋण से मुक्त होने के लिए हमें सच्चे मन से उसकी सेवा करनी चाहिए। विदेशी भाषा के सम्मुख इसका तिरस्कार नहीं करना चाहिए तभी हम अपनी 4 \_\_\_\_\_ के सच्चे सपूत कहलाएँगे किन्तु यह काम इतना सरल नहीं है। यह काम तो तलवार की 5 \_\_\_\_\_ पर चलने का है।

**SubQuestion No : 18**

Q.18 रिक्त स्थान 3 पर आने वाला सर्वाधिक उपयुक्त शब्द इनमें से क्या होगा?

- Ans
- 1. नगद
  - 2. मुद्रा
  - 3. ऋण
  - 4. पैसा

Question ID : 26433072602

Status : Not Answered

Chosen Option : --

**Comprehension:**

निम्नलिखित गद्यांश में से कुछ शब्दों को हटा दिया गया है। गद्यांश के आधार पर पूछे गए प्रश्नों में इसके रिक्त स्थान पर आने वाले उपयुक्त शब्दों का चयन कीजिए।

क्या आपने कभी इस बात पर गम्भीरतापूर्वक 1 \_\_\_\_\_ किया है कि आज हम जो कुछ भी हैं उसमें किस-किस का योगदान है? माता का, मातृभूमि का, मातृभाषा का, या फिर इन सब का? एक 2 \_\_\_\_\_ हमें जन्म देती है, एक के आंगन में खेल-कूद कर तथा खा-पी कर हम पुष्ट होते हैं और एक हमें अपने विचारों, भावों इत्यादि को प्रकट करने की शक्ति देती है। इसी शक्ति के अभाव में हम गूंगे और बहरे बन कर रह जाते हैं। यह शक्ति हम पर पूर्ण रूप से मनुष्य बनाने का उपकार करती है। इस उपकार का 3 \_\_\_\_\_ हम पर सबसे अधिक है। इसी ऋण से मुक्त होने के लिए हमें सच्चे मन से उसकी सेवा करनी चाहिए। विदेशी भाषा के सम्मुख इसका तिरस्कार नहीं करना चाहिए तभी हम अपनी 4 \_\_\_\_\_ के सच्चे सपूत कहलाएँगे किन्तु यह काम इतना सरल नहीं है। यह काम तो तलवार की 5 \_\_\_\_\_ पर चलने का है।

**SubQuestion No : 19**

Q.19 रिक्त स्थान 4 पर आने वाला सर्वाधिक उपयुक्त शब्द इनमें से क्या होगा?

Ans  1. मातृभूमि

2. देश

3. शहर

4. गाँव

Question ID : 26433072603

Status : Not Answered

Chosen Option : --

**Comprehension:**

निम्नलिखित गद्यांश में से कुछ शब्दों को हटा दिया गया है। गद्यांश के आधार पर पूछे गए प्रश्नों में इसके रिक्त स्थान पर आने वाले उपयुक्त शब्दों का चयन कीजिए।

क्या आपने कभी इस बात पर गम्भीरतापूर्वक 1 \_\_\_\_\_ किया है कि आज हम जो कुछ भी हैं उसमें किस-किस का योगदान है? माता का, मातृभूमि का, मातृभाषा का, या फिर इन सब का? एक 2 \_\_\_\_\_ हमें जन्म देती है, एक के आंगन में खेल-कूद कर तथा खा-पी कर हम पुष्ट होते हैं और एक हमें अपने विचारों, भावों इत्यादि को प्रकट करने की शक्ति देती है। इसी शक्ति के अभाव में हम गूंगे और बहरे बन कर रह जाते हैं। यह शक्ति हम पर पूर्ण रूप से मनुष्य बनाने का उपकार करती है। इस उपकार का 3 \_\_\_\_\_ हम पर सबसे अधिक है। इसी ऋण से मुक्त होने के लिए हमें सच्चे मन से उसकी सेवा करनी चाहिए। विदेशी भाषा के सम्मुख इसका तिरस्कार नहीं करना चाहिए तभी हम अपनी 4 \_\_\_\_\_ के सच्चे सपूत कहलाएँगे किन्तु यह काम इतना सरल नहीं है। यह काम तो तलवार की 5 \_\_\_\_\_ पर चलने का है।

**SubQuestion No : 20**

Q.20 रिक्त स्थान 5 पर आने वाला सर्वाधिक उपयुक्त शब्द इनमें से क्या होगा?

Ans  1. किनारा

2. धार

3. नोक

4. रास्ता

Question ID : 26433072604

Status : Not Answered

Chosen Option : --

## Constable GD in CAPFs SSF Rifleman GD in Assam Rifles and Sepoy in NCB Examination 2022

Roll Number	<b>KD Job Updates</b>
Candidate Name	<b>KD Job Updates</b>
Venue Name	iON Digital Zone iDZ 2 Sector 62
Exam Date	12/01/2023
Exam Time	9:00 AM - 10:00 AM
Subject	Constable GD Examination 2022

Section : **Part-A-General Intelligence and Reasoning**

Q.1 Select the correct mirror image of the given figure when the mirror is placed at MN as shown below.



- Ans
- 1. J I e a P w u n m
  - 2. J I a e P w u n m
  - 3. J I a e P m u n w
  - 4. J I e a P m u n w

Question ID : 26433082333

Status : Answered

Chosen Option : 2

Q.2 6 व्यक्ति - A, B, C, D, E और F, एक वृत्ताकार मेज के परितः केंद्र के विपरीत मुख करके बैठे हैं। B, A के बाईं ओर ठीक बगल में बैठा है। F, A के दाईं ओर ठीक बगल में बैठा है। E, F और D के ठीक बगल में बैठा है। C, D के दाईं ओर ठीक बगल में बैठा है। इनमें से कौन A और C के ठीक बगल में बैठा है?

- Ans
- 1. B
  - 2. F
  - 3. E
  - 4. D

Question ID : 26433074608

Status : Not Answered

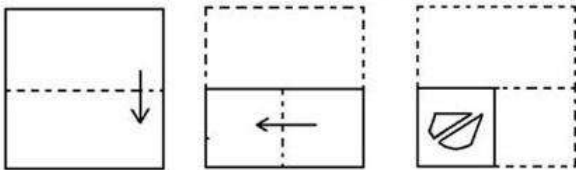
Chosen Option : --

Q.3 Eight friends P, Q, R, S, T, U, V and W are sitting in two rows facing each other. Each row has four persons. Q and R are sitting in front of each other. R is the immediate neighbour of S and T. W is sitting to the immediate left of T. W and U are diagonally opposite. V and Q are not next to each other. Who is in front of T?

- Ans
- 1. Q
  - 2. R
  - 3. P
  - 4. S

Question ID : 26433079065  
 Status : Not Answered  
 Chosen Option : --

Q.4 The sequence of folding a piece of paper and the manner in which the folded paper has been cut is shown below. Select the figure which would most closely resemble the unfolded form of the paper.



Ans

- 1.
- 2.
- 3.
- 4.

Question ID : 26433087096  
 Status : Answered  
 Chosen Option : 4

**Q.5** Select the option that is related to the fifth letter-cluster in the same way as the second letter-cluster is related to the first letter-cluster and the fourth letter-cluster is related to the third letter-cluster.

KSW : NUX :: AGP : DIQ :: EOY : ?

- Ans
- 1. BQU
  - 2. HQW
  - 3. BQW
  - 4. HOW

Question ID : 26433057747  
Status : Answered  
Chosen Option : 2

**Q.6** In a certain code language, 'FAVOUR' is written as 'RUOVAF' and 'REVEAL' is written as 'LAEVER'. How will 'MIRACLE' be written in that language?

- Ans
- 1. ECLRAIM
  - 2. ELCARIM
  - 3. ECLARMI
  - 4. EMLCRIA

Question ID : 26433082559  
Status : Answered  
Chosen Option : 2

**Q.7** Which letter-cluster will replace the question mark (?) to complete the given series?

SEJW, QGMT, OIPQ, ?, KMVK

- Ans
- 1. MKTN
  - 2. MKTM
  - 3. MKMT
  - 4. MKSN

Question ID : 26433068575  
Status : Answered  
Chosen Option : 1

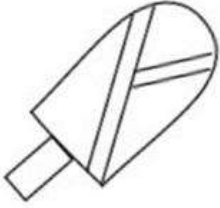
**Q.8** In a certain code language, 'HUSBAND' is written as 'DNABSUH' and 'CLEARLY' is written as 'YLRAELC'. How will 'HARBOUR' be written in that language?

- Ans
- 1. RUOBRHA
  - 2. ORUBRAH
  - 3. ORUBHRA
  - 4. RUOBRAH

Question ID : 26433068891  
Status : Answered  
Chosen Option : 4



Q.9 Select the option figure which is embedded in the given figure. (Rotation is NOT allowed)

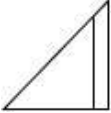


Ans

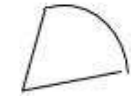
✗ 1.



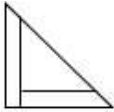
✗ 2.



✓ 3.



✗ 4.



Question ID : 26433069344

Status : Answered

Chosen Option : 3

Q.10 Which two signs should be interchanged to make the below equation mathematically correct?

$$24 + 36 - 81 \times 9 \div 2 = 42$$

Ans ✗ 1. ÷ and -

✗ 2. × and +

✓ 3. + and ×

✗ 4. + and -

Question ID : 264330117500

Status : Answered

Chosen Option : 3

Q.11 Which option represents the correct order of the given words as they would appear in the English dictionary?

- 1 Jacket
- 2 Japanese
- 3 Jabbed
- 4 Jackpot
- 5 Janitor

- Ans
- 1. 3,1,2,5,4
  - 2. 3,1,4,5,2
  - 3. 3,5,2,1,4
  - 4. 3,2,1,4,5

Question ID : 26433069318  
Status : Answered  
Chosen Option : 2

Q.12 Select the option that is related to the fifth letter-cluster in the same way as the second letter-cluster is related to the first letter-cluster and the fourth letter-cluster is related to the third letter-cluster.

SURGERY : TVSHFSZ :: SILENCE : TJMFODF :: SOCIETY : ?

- Ans
- 1. YTEICOS
  - 2. TPDJFUZ
  - 3. COSYTEI
  - 4. CIETYSO

Question ID : 26433069638  
Status : Answered  
Chosen Option : 3

Q.13 Which of the following numbers will replace the question mark (?) in the given series?  
1483, 2369, ?, 4141, 5027, 5913

- Ans
- 1. 3255
  - 2. 2869
  - 3. 3119
  - 4. 3189

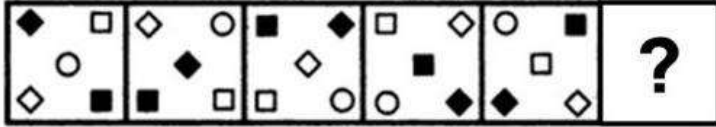
Question ID : 26433068091  
Status : Answered  
Chosen Option : 1

Q.14 Which of the following terms will replace the question mark (?) in the given series?  
RHWC, QKVF, ? , OQTL, NTSO

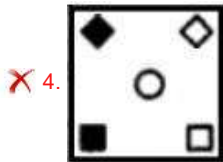
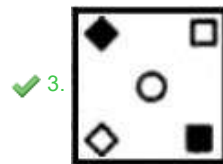
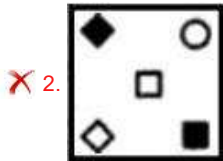
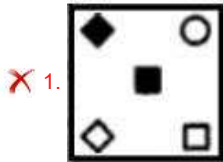
- Ans
- 1. PMUJ
  - 2. PNUI
  - 3. QNUI
  - 4. ONUJ

Question ID : 26433068309  
Status : Answered  
Chosen Option : 2

Q.15 Select the figure from among the given options that can replace the question mark (?) in the following series.



Ans



Question ID : 26433080495  
 Status : Answered  
 Chosen Option : 3

Q.16 Three Statements are given followed by Three conclusions numbered I, II and III. Assuming the statements to be true, even if they seem to be at variance with commonly known facts, decide which of the conclusions logically follow(s) from the statements.

Statements:

Some trees are fish.

All fishes are goats.

No goat is a flower.

Conclusions:

I. Some trees are goats.

II. Some fishes are not flowers.

III. Some flowers are not goats.

Ans ✗ 1. Only conclusion I follows.

✗ 2. Only conclusion II follows.

✗ 3. Only conclusion III follows.

✓ 4. All conclusions follow.

Question ID : 26433081794  
 Status : Answered  
 Chosen Option : 1

Q.17 Select the correct combination of mathematical signs to sequentially replace the % signs and to balance the given equation.

$42 \% 7 \% 5 \% 10 \% 3$

- Ans
- 1.  $\div, \times, =, \times$
  - 2.  $\times, =, -, \div$
  - 3.  $\div, \times, =, -$
  - 4.  $\times, \div, =, -$

Question ID : 26433087046

Status : Answered

Chosen Option : 1

Q.18 Which of the following numbers will replace the question mark (?) in the given series?

1, 2, 2, 4, 3, 6, 4, 8, ?

- Ans
- 1. 7
  - 2. 10
  - 3. 5
  - 4. 9

Question ID : 26433082003

Status : Answered

Chosen Option : 3

Q.19 Select the set in which the numbers are related in the same way as are the numbers of the following sets.

(NOTE : Operations should be performed on the whole numbers, without breaking down the numbers into its constituent digits. E.g. 13 – Operations on 13 such as adding/subtracting/multiplying etc. to 13 can be performed. Breaking down 13 into 1 and 3 and then performing mathematical operations on 1 and 3 is not allowed)

(17, 136, 40)

(11, 198, 90)

- Ans
- 1. (12, 108, 45)
  - 2. (9, 135, 70)
  - 3. (24, 96, 25)
  - 4. (12, 228, 105)

Question ID : 26433076548

Status : Not Answered

Chosen Option : --

Q.20 A @ B का अर्थ है 'A, B की बहन है'।  
A & B का अर्थ है 'A, B का भाई है'।  
A # B का अर्थ है 'A, B की पत्नी है'।  
A ^ B का अर्थ है 'A, B की माता है'।  
A + B का अर्थ है 'A, B के पिता है'।  
यदि Z & P + N ^ Q # S & V + E @ L है, तो निम्नलिखित में से कौन-सा कथन सही नहीं है?

- Ans
- 1. V, L के पिता हैं।
  - 2. Q, E की माता है।
  - 3. P, Q के नाना हैं।
  - 4. N, S की सास है।

Question ID : 26433068953  
Status : Answered  
Chosen Option : 1

Section : Part-B-General Knowledge and General awareness

Q.1 Startup India was launched under the \_\_\_\_\_.

- Ans
- 1. Ministry of Skill Development and Entrepreneurship
  - 2. Ministry of Social Justice and Empowerment
  - 3. Ministry of Labour and Employment
  - 4. Ministry of Commerce and Industry

Question ID : 264330116192  
Status : Answered  
Chosen Option : 1

Q.2 It is used in making gunny bags, mats, ropes, yarn, carpets and other artefacts. Which crop is being spoken about here?

- Ans
- 1. jute
  - 2. banana
  - 3. coconut
  - 4. palm

Question ID : 264330115534  
Status : Answered  
Chosen Option : 1

Q.3 Who among the following has received Rajiv Gandhi Puraskar, Indira Priyadarshini Samman and Rotary International Award?

- Ans
- 1. N. Rajam
  - 2. Mahaboob Subhani
  - 3. Zia Mohiuddin Dagar
  - 4. Shovana Narayan

Question ID : 264330115846  
Status : Answered  
Chosen Option : 1

Q.4 Which of the following is NOT related with the primary sector of economy?

- Ans  1. Forestry  
 2. Dairy  
 3. Fishing  
 4. Banking

Question ID : 26433082166  
Status : Answered  
Chosen Option : 4

Q.5 The intervention of the government whether to expand demand or reduce it constitutes the \_\_\_\_\_ function.

- Ans  1. customisation  
 2. initiation  
 3. stabilisation  
 4. creation

Question ID : 264330115287  
Status : Answered  
Chosen Option : 4

Q.6 Sattriya, is the classical dance form of which of the following states?

- Ans  1. Tamil Nadu  
 2. Uttar Pradesh  
 3. Maharashtra  
 4. Assam

Question ID : 26433071659  
Status : Answered  
Chosen Option : 4

Q.7 विश्व का सबसे लंबा लिखित संविधान किस देश का है?

- Ans  1. नीदरलैंड  
 2. दक्षिण अफ्रीका  
 3. संयुक्त राज्य अमेरिका  
 4. भारत

Question ID : 26433089176  
Status : Answered  
Chosen Option : 4

**Q.8 What makes the imported goods more expensive?**

- Ans  1. Superior Quality  
 2. Custom Made goods  
 3. Tariffs  
 4. Rarity in nature

Question ID : 264330116141  
Status : Answered  
Chosen Option : 3

**Q.9 Which Shiv Sena leader from India was elected as Member of Rajya Sabha from Maharashtra in July 2022?**

- Ans  1. Sanjay Raut  
 2. Vinayak Raut  
 3. Uddhav Thackeray  
 4. Aaditya Thackeray

Question ID : 264330114949  
Status : Answered  
Chosen Option : 3

**Q.10 Which of the following is not a Cricketer?**

- Ans  1. Saina Nehwal  
 2. Sachin Tendulkar  
 3. Javagal Srinath  
 4. Rahul Dravid

Question ID : 264330116260  
Status : Answered  
Chosen Option : 1

**Q.11 In which region did the Swadeshi Movement have the strongest impact on people?**

- Ans  1. Bengal  
 2. Kashmir  
 3. Berar  
 4. United Provinces

Question ID : 26433089884  
Status : Answered  
Chosen Option : 1

Q.12 In a badminton singles game, if both the players are on 29 points then at what point will one of them win the game?

- Ans
- 1. 31st point
  - 2. Match will be drawn
  - 3. 30th point
  - 4. 32nd point

Question ID : 264330115929  
Status : Answered  
Chosen Option : 1

Q.13 The term of the Lok Sabha, unless dissolved is \_\_\_\_\_ from the date appointed for its first meeting.

- Ans
- 1. 6 years
  - 2. 5 Years
  - 3. 3 Years
  - 4. 4 years

Question ID : 26433089968  
Status : Answered  
Chosen Option : 2

Q.14 What is the white precipitate formed in the reaction of sodium sulphate and barium chloride?

- Ans
- 1. Barium hydroxide
  - 2. Sodium chloride
  - 3. Sodium oxide
  - 4. Barium sulphate

Question ID : 26433091480  
Status : Not Answered  
Chosen Option : --

Q.15 Ravikirti composed prashasti of which of following Chalukya rulers?

- Ans
- 1. Mangalesha I
  - 2. Pulakeshin II
  - 3. Kirtivaraman II
  - 4. Vikramaditya IV

Question ID : 26433085221  
Status : Not Answered  
Chosen Option : --



Q.16 Loo is a characteristic feature of which season?

- Ans  1. Summer  
 2. Winter  
 3. Spring  
 4. Autumn

Question ID : 264330115989  
Status : Answered  
Chosen Option : 1

Q.17 How many balanced meals of average size each day should adolescents have?

- Ans  1. three  
 2. six  
 3. one  
 4. two

Question ID : 264330115229  
Status : Not Answered  
Chosen Option : --

Q.18 As per the Census 2011, what was the literacy rate in India?

- Ans  1. 74.04%  
 2. 88.23%  
 3. 65.27%  
 4. 69.90%

Question ID : 264330116055  
Status : Answered  
Chosen Option : 1

Q.19 Buddha Purnima, celebrated by the devotees of Gautam Buddha, is known as Saga Dawa in which of the following states?

- Ans  1. Andhra Pradesh  
 2. Maharashtra  
 3. Sikkim  
 4. Assam

Question ID : 264330115125  
Status : Not Answered  
Chosen Option : --

**Q.20** Who was appointed as the first female Director General of the Council of Scientific and Industrial Research (CSIR) in August 2022?

- Ans
- 1. Navjit Kaur Brar
  - 2. Apeksha Fernandes
  - 3. Nallathamby Kalaiselvi
  - 4. Savitri Jindal

Question ID : 264330114990  
Status : Answered  
Chosen Option : 1

Section : Part-C-Elementary Mathematics

**Q.1** The selling price of an article is  $\frac{4}{3}$  times of its cost price. The gain percentage is:

- Ans
- 1.  $32\frac{1}{2}\%$
  - 2.  $32\frac{1}{3}\%$
  - 3.  $33\frac{1}{3}\%$
  - 4.  $33\frac{2}{3}\%$

Question ID : 26433075146  
Status : Answered  
Chosen Option : 3

**Q.2** The product of 2 numbers is 6750 and their LCM is 450. If difference between the numbers is equal to their HCF, then find the smaller number.

- Ans
- 1. 150
  - 2. 75
  - 3. 120
  - 4. 90

Question ID : 264330116666  
Status : Answered  
Chosen Option : 2

Q.3 X gets on a lift at the ground floor which goes up at speed of 30 floors per minute whereas Y gets on another lift at the same time on the 50th floor which goes down at the speed of 45 floors per minute. At which floor will their paths cross?(lifts are moving without stopping at any floor)

- Ans
- 1. 18th
  - 2. 25th
  - 3. 24th
  - 4. 20th

Question ID : 264330116694  
Status : Answered  
Chosen Option : 4

Q.4 Two athletes A and B are running on a circular track of length 1800 m from the same starting point at the same starting time, at the speeds of 9 m/s and 6 m/s, respectively. At how many distinct points will they meet while running in opposite directions?

- Ans
- 1. 15
  - 2. 3
  - 3. 1
  - 4. 5

Question ID : 26433063241  
Status : Answered  
Chosen Option : 3

Q.5 Mehul buys a car for Rs. 560000. He renovates it and eventually sells it for Rs. 640000. The percent increase in the price of the car is:

- Ans
- 1. 80/9 percent
  - 2. 100/7 percent
  - 3. 60/7 percent
  - 4. 50/3 percent

Question ID : 264330116796  
Status : Answered  
Chosen Option : 2

Q.6 If the length of the longest diagonal of a cube is  $6\sqrt{3}$  cm, then find the volume of the cube.

- Ans
- 1.  $126 \text{ cm}^3$
  - 2.  $612 \text{ cm}^3$
  - 3.  $216 \text{ cm}^3$
  - 4.  $261 \text{ cm}^3$

Question ID : 26433073051  
Status : Answered  
Chosen Option : 3

Q.7 The total amount after 3 quarters would be Rs.13,310. If the rate of interest is 40% per annum and compounding is performed quarterly, determine the present value (in Rs.).

- Ans
- 1. 13000
  - 2. 11000
  - 3. 10000
  - 4. 9000

Question ID : 26433071332

Status : Answered

Chosen Option : 3

Q.8 Akash travels the distance from his home to school in three equal parts on his bicycle at a speed of 5 km/h, 10 km/h and 15 km/h, respectively. What is the average speed of Akash going from his home to school?

- Ans
- 1. 10 km/h
  - 2.  $9\frac{1}{11}$  km/h
  - 3.  $8\frac{2}{11}$  km/h
  - 4. 11 km/h

Question ID : 26433080376

Status : Answered

Chosen Option : 3

Q.9 Rs.12,600 is divided among 15 labourers. There are 7 men, 3 women and 5 boys. If each woman receives three times as much as each boy, and each man receives seven times as much as each boy, the share of each woman is \_\_\_\_\_.

- Ans
- 1. Rs.1,800
  - 2. Rs.1,200
  - 3. Rs.600
  - 4. Rs.900

Question ID : 26433091920

Status : Answered

Chosen Option : 3

Q.10 Find the compound interest on a sum of ₹50,000 at the rate of 6% per annum to be compounded half yearly at the end of 2 years. (Approximate to the nearest integer.)

- Ans
- 1. ₹5,676
  - 2. ₹5,978
  - 3. ₹6,275
  - 4. ₹6,933

Question ID : 26433091560

Status : Answered

Chosen Option : 3

Q.11 The marked price of a fan is 25% more than its cost price. If a discount of 12% is given on the marked price, then the gain per cent is:

- Ans
- 1. 8%
  - 2. 9%
  - 3. 7%
  - 4. 10%

Question ID : 26433075468  
Status : Answered  
Chosen Option : 4

Q.12 If  $3:5 = x:75$ , then what is the value of x?

- Ans
- 1. 42
  - 2. 45
  - 3. 50
  - 4. 30

Question ID : 26433075662  
Status : Answered  
Chosen Option : 2

Q.13 Aarav and Durga together can do a piece of work in 33 days. They worked together for 15 days and then Aarav left the work and Durga alone finished the remaining work in 30 days. Find the number of days in which Aarav alone can do the total work.

- Ans
- 1.  $145/2$  days
  - 2.  $135/2$  days
  - 3.  $155/2$  days
  - 4.  $165/2$  days

Question ID : 264330116876  
Status : Answered  
Chosen Option : 4

Q.14 If a person buys 15 pencils for ₹12, and sells 12 pencils for ₹15, find the gain or loss percentage.

- Ans
- 1. Gain of 65.25%
  - 2. Loss of 56.25%
  - 3. Gain of 56.25%
  - 4. Loss of 56.52%

Question ID : 26433076174  
Status : Answered  
Chosen Option : 3

Q.15 There is 16 percent discount on a dozen pairs of trousers marked at Rs. 5000. How many pair of trousers can be bought with Rs. 2100?

- Ans
- 1. 1.5
  - 2. 2.7
  - 3. 3.4
  - 4. 4.6

Question ID : 264330116761  
Status : Answered  
Chosen Option : 4

Q.16 A number is decreased from 200 to 150. Find the decrease percentage.

- Ans
- 1. 25%
  - 2. 51%
  - 3. 43%
  - 4. 32%

Question ID : 26433080005  
Status : Answered  
Chosen Option : 1

Q.17 A cylinder has a diameter of 14 cm, and its curved surface area is  $220 \text{ cm}^2$ . The volume of the cylinder is:

- Ans
- 1.  $670 \text{ cm}^3$
  - 2.  $770 \text{ cm}^3$
  - 3.  $707 \text{ cm}^3$
  - 4.  $620 \text{ cm}^3$

Question ID : 26433075897  
Status : Answered  
Chosen Option : 2

Q.18 A train is running at a speed of 129 km/h on a straight railway track, and a small car on a parallel road is running at a speed of 60 km/h. How long (in seconds, rounded off to the nearest integer) will the train take to cross the car completely if the train is 943 m long and they are running in the same direction? Ignore the length of the car as compared to the length of the train.

- Ans
- 1. 49
  - 2. 59
  - 3. 39
  - 4. 29

Question ID : 26433075767  
Status : Not Answered  
Chosen Option : --

Q.19 12 women and 16 men can do a piece of work in 11 days. If each woman takes twice the time taken by a man to do the work, in how many days will 16 men do the same work?

Ans

✗ 1.  $\frac{117}{8}$  days

✗ 2.  $\frac{115}{8}$  days

✗ 3.  $\frac{125}{8}$  days

✓ 4.  $\frac{121}{8}$  days

Question ID : 26433075120

Status : Not Answered

Chosen Option : --

Q.20 Which of the given pairs form a co-prime numbers pair?

Ans ✗ 1. (21 , 42)

✗ 2. (9 , 63)

✗ 3. (36 , 15)

✓ 4. (11 , 21)

Question ID : 26433082359

Status : Answered

Chosen Option : 4

Section : Part-D-English

Q.1 Select the INCORRECTLY spelt word.

Ans ✗ 1. Grammar

✗ 2. Swindle

✗ 3. Kindergarten

✓ 4. Imaginery

Question ID : 26433073740

Status : Not Answered

Chosen Option : --

Q.2 Select the most appropriate option that can substitute the underlined segment in the given sentence.

I still enjoyed the week despite of the weather.

Ans ✗ 1. despite with the weather

✗ 2. despite for the weather

✗ 3. despite to the weather

✓ 4. despite the weather

Question ID : 26433088168

Status : Not Answered

Chosen Option : --

Q.3 Select the most appropriate meaning of the given idiom.

An axe to grind

- Ans  1. Personal and selfish reason  
 2. Extra effort for solving problems  
 3. Handling sharp items  
 4. To act justly

Question ID : 26433072435  
Status : Not Answered  
Chosen Option : --

Q.4 Select the most appropriate option to fill in the blanks and make the sentence meaningful.

My \_\_\_\_\_ gives me fresh coffee every \_\_\_\_\_.

- Ans  1. made; morning  
 2. made; mourning  
 3. maid; mourning  
 4. maid; morning

Question ID : 26433092103  
Status : Not Answered  
Chosen Option : --

Q.5 Select the most appropriate synonym of the given word.

Exciting

- Ans  1. Dreary  
 2. Electrifying  
 3. Moral  
 4. Vengeful

Question ID : 26433084889  
Status : Not Answered  
Chosen Option : --

Q.6 Select the most appropriate ANTONYM of the given word.

Eager

- Ans  1. Indifferent  
 2. Sharp  
 3. Great  
 4. Greedy

Question ID : 26433072274  
Status : Not Answered  
Chosen Option : --



Q.7 Select the INCORRECTLY spelt word.

- Ans
- 1. Argue
  - 2. Lapse
  - 3. Spoil
  - 4. Blinc

Question ID : 26433073496  
Status : Not Answered  
Chosen Option : --

Q.8 Select the most appropriate ANTONYM of the given word.  
Invincible

- Ans
- 1. Vulnerable
  - 2. Powerful
  - 3. Safe
  - 4. Secure

Question ID : 26433086489  
Status : Not Answered  
Chosen Option : --

Q.9 Select the most appropriate option that can substitute the underlined segment in the given sentence. If there is no need to substitute it, select 'No substitution required'.

The fire fighters were able to put out the fire in the industrial unit.

- Ans
- 1. to put off
  - 2. putting out
  - 3. No substitution required
  - 4. putting off

Question ID : 26433089754  
Status : Not Answered  
Chosen Option : --

Q.10 Select the most appropriate option to fill in the blank.

Differences among the various groups do not \_\_\_\_\_ well for the future of the peace treaty.

- Ans
- 1. auger
  - 2. ogre
  - 3. oar
  - 4. augur

Question ID : 26433090392  
Status : Not Answered  
Chosen Option : --

**Q.11** Select the most appropriate option that can substitute the underlined segment in the given sentence. If there is no need to substitute it, select 'No substitution'.  
The District Collector, Mr Kaushalendra Kumar, are visiting the site for inspection.

- Ans
- 1. No substitution
  - 2. is visiting the site
  - 3. is visiting cite
  - 4. are visiting site

Question ID : 26433093079  
Status : Not Answered  
Chosen Option : --

**Q.12** Select the most appropriate meaning of the given idiom.

Get the picture

- Ans
- 1. To control something
  - 2. To understand what's happening
  - 3. To buy something
  - 4. To watch with own eyes

Question ID : 26433084897  
Status : Not Answered  
Chosen Option : --

**Q.13** Select the most appropriate synonym of the given word.

Conquer

- Ans
- 1. Attach
  - 2. Separate
  - 3. Surrender
  - 4. Defeat

Question ID : 26433072182  
Status : Not Answered  
Chosen Option : --

**Q.14** Select the option that expresses the given sentence in past perfect tense.

- A. The participants practised a lot for play.
- B. The participants had practised a lot for play.
- C. The participants had been practising a lot for play.
- D. The participants were practising a lot for play.

- Ans
- 1. C
  - 2. A
  - 3. B
  - 4. D

Question ID : 26433073516  
Status : Not Answered  
Chosen Option : --

**Q.15 Select the most appropriate ANTONYM of the given word.**

**Freedom**

- Ans**  1. Bondage  
 2. Scarcity  
 3. Starvation  
 4. Courage

Question ID : **26433073798**  
Status : **Not Answered**  
Chosen Option : --

**Comprehension:**

In the following passage, some words have been deleted. Read the passage carefully and select the most appropriate option to fill in each blank.

Delhi National Zoological Park, which opened in 1959, is (1.) \_\_\_\_\_ next to the well-known Old Fort. One of the top zoos in the entire Asian continent, it stands out for its (2.) \_\_\_\_\_ to give the animals and the birds housed there a habitat that is as close to natural as possible. With a total area of 214 acres, it is perfect for picnics, (3.) \_\_\_\_\_ in the winter. The National Zoological Gardens in New Delhi are home to over 2,000 different animal and bird (4.) \_\_\_\_\_. These animals and birds, which originate from many areas such as Africa, America, Australia, etc., (5.) \_\_\_\_\_ a home at this zoo. The Mughal Kos Minar serves as the Delhi Zoo's entrance.

**SubQuestion No : 16**

**Q.16 Select the most appropriate option to fill in blank number 1.**

- Ans**  1. vacated  
 2. waited  
 3. located  
 4. queued

Question ID : **26433089809**  
Status : **Not Answered**  
Chosen Option : --

**Comprehension:**

In the following passage, some words have been deleted. Read the passage carefully and select the most appropriate option to fill in each blank.

Delhi National Zoological Park, which opened in 1959, is (1.) \_\_\_\_\_ next to the well-known Old Fort. One of the top zoos in the entire Asian continent, it stands out for its (2.) \_\_\_\_\_ to give the animals and the birds housed there a habitat that is as close to natural as possible. With a total area of 214 acres, it is perfect for picnics, (3.) \_\_\_\_\_ in the winter. The National Zoological Gardens in New Delhi are home to over 2,000 different animal and bird (4.) \_\_\_\_\_. These animals and birds, which originate from many areas such as Africa, America, Australia, etc., (5.) \_\_\_\_\_ a home at this zoo. The Mughal Kos Minar serves as the Delhi Zoo's entrance.

**SubQuestion No : 17**

**Q.17 Select the most appropriate option to fill in blank number 2.**

- Ans**  1. effects  
 2. efforts  
 3. affects  
 4. escalations

Question ID : **26433089810**  
Status : **Not Answered**  
Chosen Option : --

**Comprehension:**

In the following passage, some words have been deleted. Read the passage carefully and select the most appropriate option to fill in each blank.

Delhi National Zoological Park, which opened in 1959, is (1.) \_\_\_\_\_ next to the well-known Old Fort. One of the top zoos in the entire Asian continent, it stands out for its (2.) \_\_\_\_\_ to give the animals and the birds housed there a habitat that is as close to natural as possible. With a total area of 214 acres, it is perfect for picnics, (3.) \_\_\_\_\_ in the winter. The National Zoological Gardens in New Delhi are home to over 2,000 different animal and bird (4.) \_\_\_\_\_. These animals and birds, which originate from many areas such as Africa, America, Australia, etc., (5.) \_\_\_\_\_ a home at this zoo. The Mughal Kos Minar serves as the Delhi Zoo's entrance.

**SubQuestion No : 18**

**Q.18** Select the most appropriate option to fill in blank number 3.

- Ans  1. explicitly  
 2. especially  
 3. exactly  
 4. variably

Question ID : 26433089811  
Status : Not Answered  
Chosen Option : --

**Comprehension:**

In the following passage, some words have been deleted. Read the passage carefully and select the most appropriate option to fill in each blank.

Delhi National Zoological Park, which opened in 1959, is (1.) \_\_\_\_\_ next to the well-known Old Fort. One of the top zoos in the entire Asian continent, it stands out for its (2.) \_\_\_\_\_ to give the animals and the birds housed there a habitat that is as close to natural as possible. With a total area of 214 acres, it is perfect for picnics, (3.) \_\_\_\_\_ in the winter. The National Zoological Gardens in New Delhi are home to over 2,000 different animal and bird (4.) \_\_\_\_\_. These animals and birds, which originate from many areas such as Africa, America, Australia, etc., (5.) \_\_\_\_\_ a home at this zoo. The Mughal Kos Minar serves as the Delhi Zoo's entrance.

**SubQuestion No : 19**

**Q.19** Select the most appropriate option to fill in blank number 4.

- Ans  1. kingdoms  
 2. varieties  
 3. species  
 4. beings

Question ID : 26433089812  
Status : Not Answered  
Chosen Option : --

**Comprehension:**

In the following passage, some words have been deleted. Read the passage carefully and select the most appropriate option to fill in each blank.

Delhi National Zoological Park, which opened in 1959, is (1.) \_\_\_\_\_ next to the well-known Old Fort. One of the top zoos in the entire Asian continent, it stands out for its (2.) \_\_\_\_\_ to give the animals and the birds housed there a habitat that is as close to natural as possible. With a total area of 214 acres, it is perfect for picnics, (3.) \_\_\_\_\_ in the winter. The National Zoological Gardens in New Delhi are home to over 2,000 different animal and bird (4.) \_\_\_\_\_. These animals and birds, which originate from many areas such as Africa, America, Australia, etc., (5.) \_\_\_\_\_ a home at this zoo. The Mughal Kos Minar serves as the Delhi Zoo's entrance.

**SubQuestion No : 20**

**Q.20** Select the most appropriate option to fill in blank number 5.

- Ans  1. finding  
 2. find  
 3. found  
 4. finds

Question ID : 26433089813  
Status : Not Answered  
Chosen Option : --

Section : Part-D-Hindi

**Q.1** सभ्य व्यक्ति किसी का अपमान नहीं करते हैं।  
उपरोक्त वाक्य में रेखांकित शब्द के विलोम शब्द का चयन कीजिए।

- Ans  1. असभ्य  
 2. भद्र  
 3. शील  
 4. शालीन

Question ID : 26433079644  
Status : Answered  
Chosen Option : 1

**Q.2** 'साहित्यानुरागी \_\_\_\_\_।'   
उपर्युक्त वाक्य में रिक्त स्थान के लिए उपयुक्त विकल्प निम्न में से क्या होगा?

- Ans  1. से तात्पर्य है साहित्य प्रेमी  
 2. से साहित्य प्रेमी तात्पर्य है  
 3. का तात्पर्य प्रेमी साहित्य है  
 4. का प्रेमी तात्पर्य साहित्य है

Question ID : 26433067036  
Status : Answered  
Chosen Option : 1

Q.3 निम्नलिखित मुहावरे का उचित अर्थ विकल्पों में से चुनिए।  
नाक रगड़ना

- Ans  1. दीनता पूर्वक प्रार्थना करना  
 2. परेशान करना  
 3. क्रोधित होना  
 4. तंग करना

Question ID : 26433069998  
Status : Answered  
Chosen Option : 3

Q.4 जिसके सभी दाँत झड़ चुके हों।

दिए गए वाक्यांश के लिए एक शब्द होगा-

- Ans  1. पोपला  
 2. खोखला  
 3. बूढ़ा  
 4. खल्वाट

Question ID : 26433070059  
Status : Not Answered  
Chosen Option : --

Q.5 गर्मियों में गर्म हवा चलती है।  
उपरोक्त वाक्य में रेखांकित शब्द के उचित पर्यायवाची शब्द का चयन कीजिए।

- Ans  1. गजराज  
 2. सर  
 3. वासव  
 4. बयार

Question ID : 26433079621  
Status : Answered  
Chosen Option : 1

Q.6 'भारत देश में इन्दोर स्वच्छता की सूची में प्रथम स्थान पर है।' वाक्य में अशुद्ध वर्तनी वाला शब्द है -

- Ans  1. प्रथम  
 2. भारत  
 3. इन्दोर  
 4. स्वच्छता

Question ID : 26433069700  
Status : Answered  
Chosen Option : 3

Q.7 रेखांकित शब्द-समूह के लिए सर्वाधिक उपयुक्त विकल्प चुनें।  
जिसमें चेतना न हो, उसकी दशा को नहीं सुधारा जा सकता।

- Ans
- 1. बेहोश
  - 2. मूर्ख
  - 3. अचेतन
  - 4. अवचेतन

Question ID : 26433062282  
Status : Not Answered  
Chosen Option : --

Q.8 'अकस्मात्' शब्द के लिए इनमें से उपयुक्त पर्यायवाची शब्द कौन-सा है?

- Ans
- 1. अनिवार्य
  - 2. अचानक
  - 3. अदृश्य
  - 4. अभंज

Question ID : 26433066894  
Status : Not Answered  
Chosen Option : --

Q.9 निम्नलिखित मुहावरे के लिए उपयुक्त सार्थक शब्द है-  
गूलर का फूल होना

- Ans
- 1. दुर्लभ होना
  - 2. बहुत ज्यादा परेशान होना
  - 3. बहुत सुंदर होना
  - 4. क्रोध करना

Question ID : 26433065778  
Status : Answered  
Chosen Option : 3

Q.10 निम्नलिखित में से कौन सा संबोधन कारक चिह्न है?

- Ans
- 1. अरे
  - 2. हो
  - 3. ने
  - 4. से

Question ID : 26433085032  
Status : Answered  
Chosen Option : 1

Q.11 'राजनीतिज्ञों एवं राजदूतों की नीति संबंधी कला' वाक्यांश के लिए इनमें से उपयुक्त शब्द कौन-सा है?

- Ans
- 1. राजनीति
  - 2. कूटनीति
  - 3. अर्थनीति
  - 4. गृहनीति

Question ID : 26433066887  
Status : Not Answered  
Chosen Option : --

Q.12 निम्नलिखित वाक्य के किस शब्द में वर्तनीगत अशुद्धि है?  
भगवान शिव का निवास स्थान केलाश है।

- Ans
- 1. केलाश
  - 2. शिव
  - 3. भगवान
  - 4. निवास

Question ID : 26433066822  
Status : Answered  
Chosen Option : 1

Q.13 युद्ध की इच्छा रखने वाला युवराज कहलाता है।  
उपरोक्त वाक्य में रेखांकित पद के स्थान पर आने वाले सही शब्द का चयन विकल्पों में से कीजिए।

- Ans
- 1. युयुत्सु
  - 2. राजनीतिज्ञ
  - 3. यशस्वी
  - 4. यायावर

Question ID : 26433063060  
Status : Answered  
Chosen Option : 3

Q.14 निम्नलिखित विकल्पों में से किस एक वाक्य में संख्यावाचक विशेषण का उचित प्रयोग नहीं किया गया है?

- Ans
- 1. छत पर चार सफ़ेद कबूतर हैं।
  - 2. भव्या का स्वभाव अच्छा है।
  - 3. कुछ खिलाड़ी बहुत अच्छा खेले।
  - 4. कक्षा में चार छात्र पढ़ते हैं।

Question ID : 26433091237  
Status : Answered  
Chosen Option : 2



Q.15 'राधा जब घर पहुँची तो दिवस खत्म हो चला था।' वाक्य में प्रयुक्त 'दिवस' का विलोम शब्द नहीं है-

- Ans  1. रजनी  
 2. अवनि  
 3. रात्रि  
 4. निशा

Question ID : 26433069747

Status : Answered

Chosen Option : 4

**Comprehension:**

निम्न गद्यावतरण में से कुछ शब्दों को हटा दिया गया है। गद्यावतरण के आधार पर पूछे गए प्रश्नों में इन रिक्त स्थानों के लिए उपयुक्त शब्दों का चयन विकल्पों में से कीजिए।  
आवश्यकता इस बात की है कि हमारी शिक्षा का माध्यम 1. \_\_\_\_\_ भाषा हो, जिसमें राष्ट्र के हृदय-मन-प्राण के सूक्ष्मतम और गंभीरतम संवेदन मुखरित हों और हमारा पाठ्यक्रम यूरोप तथा अमेरिका के पाठ्यक्रम पर 2. \_\_\_\_\_ न होकर हमारी अपनी सांस्कृतिक परम्पराओं एवं आवश्यकताओं का प्रतिनिधित्व करे। भारतीय भाषाओं, भारतीय 3. \_\_\_\_\_ भारतीय दर्शन, भारतीय धर्म और भारतीय समाजशास्त्र को हम सर्वोपरि स्थान दें। उन्हें अपने शिक्षाक्रम में गौण स्थान देकर या शिक्षित जन को उनसे वंचित रखकर हमने राष्ट्रीय संस्कृति में एक महान रिक्ति को जन्म दिया है, जो नई 4. \_\_\_\_\_ को भीतर से खोखला कर रहा है। हम राष्ट्रीय 5. \_\_\_\_\_ से ही नहीं, सामयिक जीवन प्रवाह से भी दूर जा पड़े हैं।

**SubQuestion No : 16**

Q.16 रिक्त स्थान 1 के लिए सर्वाधिक उपयुक्त शब्द इनमें से क्या होगा?

- Ans  1. विदेशी  
 2. अरबी  
 3. अंग्रेजी  
 4. भारतीय

Question ID : 26433072594

Status : Answered

Chosen Option : 4

**Comprehension:**

निम्न गद्यावतरण में से कुछ शब्दों को हटा दिया गया है। गद्यावतरण के आधार पर पूछे गए प्रश्नों में इन रिक्त स्थानों के लिए उपयुक्त शब्दों का चयन विकल्पों में से कीजिए।  
आवश्यकता इस बात की है कि हमारी शिक्षा का माध्यम 1. \_\_\_\_\_ भाषा हो, जिसमें राष्ट्र के हृदय-मन-प्राण के सूक्ष्मतम और गंभीरतम संवेदन मुखरित हों और हमारा पाठ्यक्रम यूरोप तथा अमेरिका के पाठ्यक्रम पर 2. \_\_\_\_\_ न होकर हमारी अपनी सांस्कृतिक परम्पराओं एवं आवश्यकताओं का प्रतिनिधित्व करे। भारतीय भाषाओं, भारतीय 3. \_\_\_\_\_ भारतीय दर्शन, भारतीय धर्म और भारतीय समाजशास्त्र को हम सर्वोपरि स्थान दें। उन्हें अपने शिक्षाक्रम में गौण स्थान देकर या शिक्षित जन को उनसे वंचित रखकर हमने राष्ट्रीय संस्कृति में एक महान रिक्ति को जन्म दिया है, जो नई 4. \_\_\_\_\_ को भीतर से खोखला कर रहा है। हम राष्ट्रीय 5. \_\_\_\_\_ से ही नहीं, सामयिक जीवन प्रवाह से भी दूर जा पड़े हैं।

**SubQuestion No : 17**

Q.17 रिक्त स्थान 2 के लिए सर्वाधिक उपयुक्त शब्द इनमें से क्या होगा?

- Ans  1. आधारित  
 2. नकल  
 3. निर्धारित  
 4. जैसा

Question ID : 26433072595

Status : Answered

Chosen Option : 1

**Comprehension:**

निम्न गद्यावतरण में से कुछ शब्दों को हटा दिया गया है। गद्यावतरण के आधार पर पूछे गए प्रश्नों में इन रिक्त स्थानों के लिए उपयुक्त शब्दों का चयन विकल्पों में से कीजिए।

आवश्यकता इस बात की है कि हमारी शिक्षा का माध्यम 1. \_\_\_\_\_ भाषा हो, जिसमें राष्ट्र के हृदय-मन-प्राण के सूक्ष्मतम और गंभीरतम संवेदन मुखरित हों और हमारा पाठ्यक्रम यूरोप तथा अमेरिका के पाठ्यक्रम पर 2. \_\_\_\_\_ न होकर हमारी अपनी सांस्कृतिक परम्पराओं एवं आवश्यकताओं का प्रतिनिधित्व करे। भारतीय भाषाओं, भारतीय 3. \_\_\_\_\_ भारतीय दर्शन, भारतीय धर्म और भारतीय समाजशास्त्र को हम सर्वोपरि स्थान दें। उन्हें अपने शिक्षाक्रम में गौण स्थान देकर या शिक्षित जन को उनसे वंचित रखकर हमने राष्ट्रीय संस्कृति में एक महान रिक्ति को जन्म दिया है, जो नई 4. \_\_\_\_\_ को भीतर से खोखला कर रहा है। हम राष्ट्रीय 5. \_\_\_\_\_ से ही नहीं, सामयिक जीवन प्रवाह से भी दूर जा पड़े हैं।

**SubQuestion No : 18**

Q.18 रिक्त स्थान 3 के लिए सर्वाधिक उपयुक्त शब्द इनमें से क्या होगा?

- Ans  1. इतिहास  
 2. हिन्दी  
 3. अंग्रेजी  
 4. उर्दू

Question ID : 26433072596

Status : Answered

Chosen Option : 1

**Comprehension:**

निम्न गद्यावतरण में से कुछ शब्दों को हटा दिया गया है। गद्यावतरण के आधार पर पूछे गए प्रश्नों में इन रिक्त स्थानों के लिए उपयुक्त शब्दों का चयन विकल्पों में से कीजिए।

आवश्यकता इस बात की है कि हमारी शिक्षा का माध्यम 1. \_\_\_\_\_ भाषा हो, जिसमें राष्ट्र के हृदय-मन-प्राण के सूक्ष्मतम और गंभीरतम संवेदन मुखरित हों और हमारा पाठ्यक्रम यूरोप तथा अमेरिका के पाठ्यक्रम पर 2. \_\_\_\_\_ न होकर हमारी अपनी सांस्कृतिक परम्पराओं एवं आवश्यकताओं का प्रतिनिधित्व करे। भारतीय भाषाओं, भारतीय 3. \_\_\_\_\_ भारतीय दर्शन, भारतीय धर्म और भारतीय समाजशास्त्र को हम सर्वोपरि स्थान दें। उन्हें अपने शिक्षाक्रम में गौण स्थान देकर या शिक्षित जन को उनसे वंचित रखकर हमने राष्ट्रीय संस्कृति में एक महान रिक्ति को जन्म दिया है, जो नई 4. \_\_\_\_\_ को भीतर से खोखला कर रहा है। हम राष्ट्रीय 5. \_\_\_\_\_ से ही नहीं, सामयिक जीवन प्रवाह से भी दूर जा पड़े हैं।

**SubQuestion No : 19**

Q.19 रिक्त स्थान 4 के लिए सर्वाधिक उपयुक्त शब्द इनमें से क्या होगा?

- Ans  1. सेना  
 2. पीढ़ी  
 3. युवा  
 4. आदमी

Question ID : 26433072597

Status : Answered

Chosen Option : 2

**Comprehension:**

निम्न गद्यावतरण में से कुछ शब्दों को हटा दिया गया है। गद्यावतरण के आधार पर पूछे गए प्रश्नों में इन रिक्त स्थानों के लिए उपयुक्त शब्दों का चयन विकल्पों में से कीजिए।

आवश्यकता इस बात की है कि हमारी शिक्षा का माध्यम 1. \_\_\_\_\_ भाषा हो, जिसमें राष्ट्र के हृदय-मन-प्राण के सूक्ष्मतम और गंभीरतम संवेदन मुखरित हों और हमारा पाठ्यक्रम यूरोप तथा अमेरिका के पाठ्यक्रम पर 2. \_\_\_\_\_ न होकर हमारी अपनी सांस्कृतिक परम्पराओं एवं आवश्यकताओं का प्रतिनिधित्व करे। भारतीय भाषाओं, भारतीय 3. \_\_\_\_\_ भारतीय दर्शन, भारतीय धर्म और भारतीय समाजशास्त्र को हम सर्वोपरि स्थान दें। उन्हें अपने शिक्षाक्रम में गौण स्थान देकर या शिक्षित जन को उनसे वंचित रखकर हमने राष्ट्रीय संस्कृति में एक महान रिक्ति को जन्म दिया है, जो नई 4. \_\_\_\_\_ को भीतर से खोखला कर रहा है। हम राष्ट्रीय 5. \_\_\_\_\_ से ही नहीं, सामयिक जीवन प्रवाह से भी दूर जा पड़े हैं।

**SubQuestion No : 20**

Q.20 रिक्त स्थान 5 के लिए सर्वाधिक उपयुक्त शब्द इनमें से क्या होगा?

- Ans
- 1. रीति
  - 2. परम्परा
  - 3. नियम
  - 4. रूढ़ि

Question ID : 26433072598

Status : Answered

Chosen Option : 2

KD Job Updates

## Constable GD in CAPFs SSF Rifleman GD in Assam Rifles and Sepoy in NCB Examination 2022

Roll Number	@Qmaths Telegram Channel
Candidate Name	@Qmaths Telegram Channel
Venue Name	Pawan Ganga Educational Centre 1
Exam Date	12/01/2023
Exam Time	11:45 AM - 12:45 PM
Subject	Constable GD Examination 2022

Section : **Part-A-General Intelligence and Reasoning**


**Q.1** Which of the following numbers will replace the question mark (?) in the given series?  
5, 13, 29, ?, 125, 253

- Ans
- 1. 75
  - 2. 58
  - 3. 61
  - 4. 52

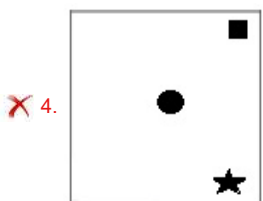
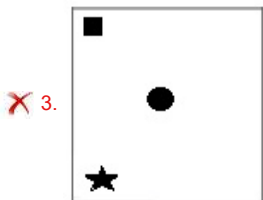
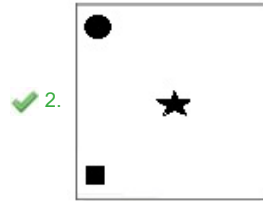
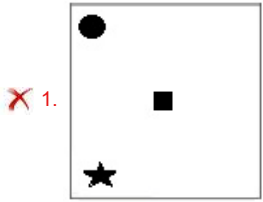
Question ID : 26433068095  
Status : Answered  
Chosen Option : 3

KD Job Updates

Q.2 Select the figure that will replace the question mark (?) in the following figure series.

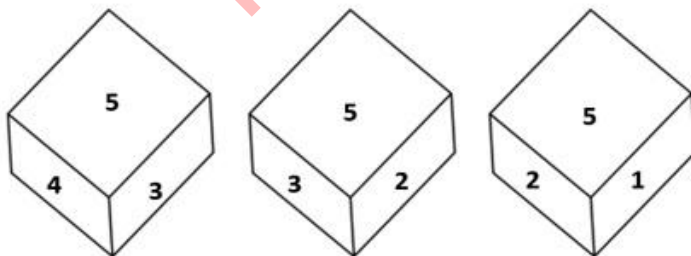


Ans



Question ID : 26433070420  
 Status : Answered  
 Chosen Option : 2

Q.3 Three different positions of the same dice are shown. Find the number on the face opposite the face showing '4'.



- Ans
- ✓ 1. 2
  - ✗ 2. 6
  - ✗ 3. 1
  - ✗ 4. 3

Question ID : 26433082890  
 Status : Answered  
 Chosen Option : 1

**Q.4** Six girls D, K, M, P, R and S are sitting around a circular table, facing the centre. S is sitting third to the left of R. P is sitting to the immediate right of R and to the immediate left of D. M is sitting to the immediate left of R. K is sitting to the immediate right of S and to the immediate left of M. Who is sitting at the third position from the left of D?

- Ans**
- 1. M
  - 2. P
  - 3. R
  - 4. S

Question ID : 26433080471  
Status : **Answered**  
Chosen Option : 1

**Q.5** Select the letter-cluster from among the given options that can replace the question mark (?) in the following series.  
?, HLEJ, JNGL, LPIN

- Ans**
- 1. FJCH
  - 2. EDHI
  - 3. FJCD
  - 4. FGCF

Question ID : 26433068351  
Status : **Answered**  
Chosen Option : 1

**Q.6** Three statements are given followed by three conclusions numbered I, II and III. Assuming the statements to be true, even if they seem to be at variance with commonly known facts, decide which of the conclusions logically follow(s) from the statements.

**Statements:**

- All gloves are bats.
- All stumps are bats.
- All bats are balls.

**Conclusions:**

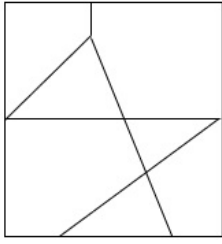
- I. All stumps are balls.
- II. Some balls are gloves.
- III. Some gloves are stumps.

- Ans**
- 1. All conclusions follow
  - 2. Only conclusions I and II follow
  - 3. Only conclusions I and III follow
  - 4. Only conclusions II and III follow

Question ID : 26433082310  
Status : **Answered**  
Chosen Option : 2

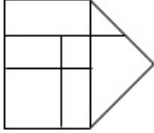
Q.7 वह विकल्प चित्र चुनिए, जो प्रस्तुत चित्र में अंतर्निहित है। (घुमाना अनुमन्य नहीं

है)

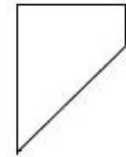


Ans

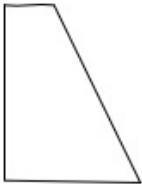
✗ 1.



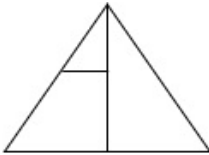
✓ 2.



✗ 3.



✗ 4.



Question ID : 26433069348

Status : Answered

Chosen Option : 2

Q.8 Select the option that is related to the fifth letter-cluster in the same way as the second letter-cluster is related to the first letter-cluster and the fourth letter-cluster is related to the third letter-cluster.

RAIN : SZJM :: FALL : GZMK :: JUMP : ?

Ans ✗ 1. KNT0

✓ 2. KTNO

✗ 3. KOTN

✗ 4. OKTN

Question ID : 26433070326

Status : Answered

Chosen Option : 2

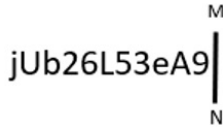
Q.9 Which of the mathematical signs should be interchanged in the below equation to make it mathematically correct?

$$3 + 78 \div 13 - 9 \times 117 = 126$$

- Ans
- 1. + and -
  - 2. + and  $\times$
  - 3. + and  $\div$
  - 4.  $\div$  and  $\times$

Question ID : 264330114175  
Status : Answered  
Chosen Option : 2

Q.10 Select the correct mirror image of the given figure when the mirror is placed at MN as shown below.



- Ans
- 1.
  - 2.
  - 3.
  - 4.

Question ID : 26433085544  
Status : Answered  
Chosen Option : 1

Q.11 Which number will replace the question mark (?) in the following series?  
19, 21, ?, 134, 538, 2692

- Ans
- 1. 44
  - 2. 38
  - 3. 68
  - 4. 84

Question ID : 26433068970  
Status : Answered  
Chosen Option : 1

Q.12 Seven people, A, B, C, D, E, F and G are sitting in a straight row, facing north. A sits third to the left of D. D sits to the extreme right. Only two people sit between A and F. B is an immediate neighbour of F. Only 1 person sits between C and D. G is not an immediate neighbour of A. How many people sit between F and C?

- Ans
- 1. 2
  - 2. 5
  - 3. 3
  - 4. 4

Question ID : 26433056930  
Status : Answered  
Chosen Option : 3



Q.13 Which option represents the correct order of the given words as they would appear in the English dictionary?

- 1 Peanut
- 2 Peasant
- 3 Peacock
- 4 Peach
- 5 Pencil

- Ans
- 1. 4,3,5,1,2
  - 2. 3,4,5,1,2
  - 3. 4,3,1,2,5
  - 4. 3,4,1,2,5

Question ID : 26433069258  
Status : Answered  
Chosen Option : 3

Q.14 'G + H' means 'G is the daughter of H'.

'G - H' means 'G is the husband of H'.

'G × H' means 'G is the brother of H'.

If the relationships in a family are represented as: A + Q - R + K - Y, then how is K related to A?

- Ans
- 1. Brother
  - 2. Father
  - 3. Husband
  - 4. Mother's father

Question ID : 26433069176  
Status : Answered  
Chosen Option : 4

Q.15 Select the option that is related to the fifth term in the same way as the second term is related to the first term and the fourth term is related to the third term.

ARCS : ENHN :: GHAT : KDFO :: MUSK : ?

- Ans
- 1. PRYE
  - 2. QRXE
  - 3. PQYF
  - 4. QQXF

Question ID : 26433058009  
Status : Answered  
Chosen Option : 4

Q.16 Which of the following letters will replace the question mark (?) and complete the following letter series?

T, R, P, N, L, J, ?

- Ans
- 1. I
  - 2. H
  - 3. F
  - 4. G

Question ID : 26433067277  
Status : Answered  
Chosen Option : 2

Q.17 In a certain coded language, 'distant face' is coded as 'human sad', 'face stairs' is coded as 'sad overpower', 'distant cup' is coded as 'human tea', and 'stairs cup' is coded as 'overpower tea'. What is the code word for 'face'?

- Ans
- 1. overpower
  - 2. tea
  - 3. human
  - 4. sad

Question ID : 26433069040  
Status : Answered  
Chosen Option : 4

Q.18 Select the option that is related to the sixth term in the same way as the first term is related to the second term and the third term is related to the fourth term.  
169 : 182 :: 225 : 240 :: ? : 306

- Ans
- 1. 291
  - 2. 289
  - 3. 192
  - 4. 195

Question ID : 26433069093  
Status : Answered  
Chosen Option : 2

Q.19 In a certain code language, 'TRUTH' is coded as UQVSI and 'FIRST' is coded as GHSRU. How will 'WHITE' be coded in that language?

- Ans
- 1. DSRGV
  - 2. XIJUF
  - 3. VGHSD
  - 4. XGJSF

Question ID : 26433074514  
Status : Answered  
Chosen Option : 4

Q.20 Which two signs should be interchanged to make the below equation mathematically correct?

$$72 \times 3 + 32 \div 4 - 16 = 136$$

- Ans
- 1.  $\times$  and  $\div$
  - 2.  $\div$  and  $-$
  - 3.  $+$  and  $-$
  - 4.  $\times$  and  $+$

Question ID : 264330117504  
Status : Answered  
Chosen Option : 1

Section : Part-B-General Knowledge and General awareness

Q.1 Sphalerite is the ore of which of the following metals?

- Ans
- 1. Copper
  - 2. Silver
  - 3. Zinc
  - 4. Tin

Question ID : 264330115142  
Status : Not Answered  
Chosen Option : --

Q.2 \_\_\_\_\_ are present only in plant cells.

- Ans
- 1. Mitochondria
  - 2. Nucleus
  - 3. Golgi apparatus
  - 4. Plastids

Question ID : 264330115239  
Status : Answered  
Chosen Option : 4

Q.3 Nishagandhi Nritya Utsav is celebrated in which state of India?

- Ans
- 1. Kerala
  - 2. Tamil Nadu
  - 3. Telangana
  - 4. Karnataka

Question ID : 26433072922  
Status : Answered  
Chosen Option : 1

Q.4 Which of the following oilseeds is grown both, as a rabi crop and a kharif crop?

- Ans
- 1. Linseed
  - 2. Groundnut
  - 3. Mustard
  - 4. Castor seed

Question ID : 264330115538  
Status : Not Answered  
Chosen Option : --

Q.5 On which of the following issues, Lok Sabha and Rajya Sabha don't enjoy equal powers?

- Ans
- 1. Impeaching the Judges of the Supreme Court and High Court
  - 2. Impeaching the President
  - 3. Constitutional amendments
  - 4. Passing of money bills

Question ID : 26433054105  
Status : Answered  
Chosen Option : 4

Q.6 Which hills in Meghalaya receive the maximum rainfall?

- Ans
- 1. Khasi hills
  - 2. Aravali
  - 3. Nilgiri
  - 4. Shivalik

Question ID : 26433086755  
Status : Answered  
Chosen Option : 1

Q.7 Which country surrounds Tripura from west, north and south sides?

- Ans
- 1. Bhutan
  - 2. Vietnam
  - 3. Myanmar
  - 4. Bangladesh

Question ID : 264330116098  
Status : Answered  
Chosen Option : 4

Q.8 Theme of eleventh five year plan in India, was \_\_\_\_\_.

- Ans
- 1. Population Growth
  - 2. Equal Pay for Equal Work
  - 3. Towards Faster & More Inclusive Growth
  - 4. Inflation Growth

Question ID : 264330115360  
Status : Not Answered  
Chosen Option : --

Q.9 The 36th edition of the 2022 National Games of India was held in the state of \_\_\_\_\_.

- Ans
- 1. Madhya Pradesh
  - 2. Gujarat
  - 3. Maharashtra
  - 4. Punjab

Question ID : 264330115909  
Status : Answered  
Chosen Option : 2

Q.10 The total value of goods and services traded is considered to be the \_\_\_\_\_ of trade.

- Ans
- 1. Volume
  - 2. Composition
  - 3. Direction
  - 4. Exhibition

Question ID : 26433054780  
Status : Not Answered  
Chosen Option : --

Q.11 Alarnel Valli a classical dancer who received the Padma Bhushan is known for \_\_\_\_\_.

- Ans
- 1. Mohiniattam
  - 2. Bharatnatyam
  - 3. Kuchipudi
  - 4. Kathakali

Question ID : 264330115860  
Status : Answered  
Chosen Option : 2

Q.12 Article 17 of the Constitution of India deals with \_\_\_\_\_.

- Ans  1. abolition of untouchability  
 2. equality before law  
 3. abolition of titles  
 4. right to education

Question ID : 26433089905  
Status : Answered  
Chosen Option : 1

Q.13 Which of the following is NOT a part of revenue budget of the government?

- Ans  1. Non-tax Revenue  
 2. Tax Revenue  
 3. Plan Revenue Expenditure  
 4. Plan Capital Expenditure

Question ID : 264330115291  
Status : Not Answered  
Chosen Option : --

Q.14 The Rig Veda is a collection of \_\_\_\_\_ hymns.

- Ans  1. 1028  
 2. 1076  
 3. 1124  
 4. 1152

Question ID : 264330115440  
Status : Answered  
Chosen Option : 1

Q.15 Who among the following became the chief minister of Uttar Pradesh in March 2022?

- Ans  1. Akhilesh Yadav  
 2. Mayawati  
 3. Mulayam Singh Yadav  
 4. Yogi Adityanath

Question ID : 264330114894  
Status : Answered  
Chosen Option : 4

Q.16 Who has been elected as the lifetime president of Yuvajana Sramika Rythu Congress Party in July 2022?

- Ans  1. Ajay Maken  
 2. Avinash Pandey  
 3. Jagan Mohan Reddy  
 4. Jitendra Singh

Question ID : 264330114994  
Status : Not Answered  
Chosen Option : --

Q.17 \_\_\_\_\_ was an Act passed to make a provision for levy and collection of tax on intra-State supply of goods or services.

- Ans
- 1. The Central Goods and Services Tax Act
  - 2. The Central Gifts and Services Tax Act
  - 3. The Central Goods and Secured Tax Act
  - 4. The Cost of Goods and Services Tax Act

Question ID : 264330116206  
Status : Answered  
Chosen Option : 1

Q.18 Awadh was annexed by the British in \_\_\_\_\_.

- Ans
- 1. 1845
  - 2. 1856
  - 3. 1838
  - 4. 1859

Question ID : 26433090581  
Status : Answered  
Chosen Option : 4

Q.19 Famous Indian Boxer Mary Kom is from which state?

- Ans
- 1. Nagaland
  - 2. Manipur
  - 3. Tamil Nadu
  - 4. Mizoram

Question ID : 264330116274  
Status : Answered  
Chosen Option : 2

Q.20 Which among the following festivals is also known as "Festival of Festivals"?

- Ans
- 1. Chapchar Kut
  - 2. Hornbill Festival
  - 3. Moatsu
  - 4. Wangala

Question ID : 264330115080  
Status : Not Answered  
Chosen Option : --

Section : Part-C-Elementary Mathematics

Q.1 In a store, an item with an MRP of Rs.28,500 is available at a discounted price of Rs.27,645. What is the percentage of discount given on that item?

- Ans
- 1. 4%
  - 2. 1%
  - 3. 3%
  - 4. 2%

Question ID : 26433082971  
Status : Answered  
Chosen Option : 3

Q.2 If the difference between compound interest, compounding annually and simple interest on a certain sum at 10% per annum for 2 years is ₹464, then find the sum invested.

- Ans
- 1. ₹46,040
  - 2. ₹46,400
  - 3. ₹44,006
  - 4. ₹44,600

Question ID : 26433081590  
Status : Answered  
Chosen Option : 2

Q.3 The marked price of an item is 25% more than the cost. What should be the discount on the selling price to earn 10% profit?

- Ans
- 1. 12%
  - 2. 15%
  - 3. 10.5%
  - 4. 12.5%

Question ID : 26433082853  
Status : Answered  
Chosen Option : 1

Q.4 The length of the rectangle is three times its breadth. If its length is decreased by 7 cm and breadth is increased by 7 cm, its area is increased by  $21 \text{ cm}^2$ . The length of the first rectangle is:

- Ans
- 1. 21 cm
  - 2. 18 cm
  - 3. 15 cm
  - 4. 12 cm

Question ID : 26433075477  
Status : Answered  
Chosen Option : 3

Q.5 A sum of Rs.P was borrowed and paid back in two equal yearly instalments, each of Rs.35,280. If the rate of interest was 5% per annum and interest is compounding annually, then the value of P is \_\_\_\_\_.

- Ans
- 1. Rs.64,400
  - 2. Rs.65,600
  - 3. Rs.65,400
  - 4. Rs.64,800

Question ID : 26433066412  
Status : Answered  
Chosen Option : 2

**Q.6** A five-digit number 32054 is divisible by 11. If the digits are rearranged in increasing order, then the new number which is formed will be divisible by:

- Ans**
- 1. 3
  - 2. 11
  - 3. 5
  - 4. 2

Question ID : 26433075518  
Status : Answered  
Chosen Option : 3

**Q.7** 30 men cut 50 trees in 10 h. If 10 men leave the job, how many trees will be cut in 15 h?

- Ans**
- 1. 50
  - 2. 45
  - 3. 55
  - 4. 60

Question ID : 26433065100  
Status : Answered  
Chosen Option : 1

**Q.8** Find the fourth proportional to the numbers 36, 48 and 90.

- Ans**
- 1. 120
  - 2. 67.5
  - 3. 64
  - 4. 40

Question ID : 26433076188  
Status : Answered  
Chosen Option : 1

**Q.9** In a mixture of 60 litres, the ratio of milk and water is 2 : 3. What amount of water must be added to make the ratio of milk and water 1 : 2?

- Ans**
- 1. 56 litres
  - 2. 60 litres
  - 3. 76 litres
  - 4. 12 litres

Question ID : 26433075497  
Status : Answered  
Chosen Option : 4



Q.10 What is the HCF of  $\frac{4}{5}, \frac{8}{15}, \frac{2}{35}$ ?

Ans

1.  $\frac{2}{525}$

2.  $\frac{2}{105}$

3.  $\frac{4}{105}$

4.  $\frac{2}{75}$

Question ID : 26433075540

Status : Answered

Chosen Option : 2

Q.11 What is the average of the first six even numbers?

Ans  1. 10

2. 5

3. 6

4. 7

Question ID : 26433075054

Status : Answered

Chosen Option : 4

Q.12 A person can row 88 km downstream in 11 h, and 72 km upstream in 12 h. What is the speed of the current?

Ans  1. 1 km/h

2. 2 km/h

3. 1.5 km/h

4. 3 km/h

Question ID : 26433079889

Status : Answered

Chosen Option : 1

Q.13 Suman buys 40 kg of wheat at Rs.12.50/kg and 30 kg of wheat at Rs.14/kg. At what rate per kg should he sell the mixture to gain 5% on the whole?

Ans  1. Rs.14.80

2. Rs.13.80

3. Rs.12.80

4. Rs.11.80

Question ID : 26433066361

Status : Answered

Chosen Option : 2

**Q.14** Kapil and Prakash together can do a piece of work in 45 days. Prakash and Pihu together can do it in 60 days. Kapil and Pihu together can do it in 60 days. In how many days will Kapil, Prakash and Pihu finish it together?

- Ans
- 1. 42 days
  - 2. 38 days
  - 3. 36 days
  - 4. 34 days

Question ID : 264330116890  
Status : Answered  
Chosen Option : 3

**Q.15** A cylindrical tank has a capacity of  $5632 \text{ m}^3$ . If the diameter of its base is 8 m, what is the depth of the cylindrical tank?

(Use  $\pi = \frac{22}{7}$ )

- Ans
- 1. 112 m
  - 2. 118 m
  - 3. 116 m
  - 4. 114 m

Question ID : 26433079778  
Status : Answered  
Chosen Option : 1

**Q.16** The weight of a baby is increased from 3.2 kg to 6 kg in 3 months. The percent increase in weight of the baby is:

- Ans
- 1. 75.5 percent
  - 2. 87.5 percent
  - 3. 70.5 percent
  - 4. 82.5 percent

Question ID : 264330116810  
Status : Answered  
Chosen Option : 2

**Q.17** Munaf and Surya start simultaneously at the same point on a circular track and run along the track in the same direction. The point on the track at which they meet for the 31<sup>st</sup> time is the same as that at which they meet for the 43<sup>rd</sup> time. If the ratio of the speed of the faster boy to that of the slower one is  $n : 1$ , where 'n' is a natural number, which of the following is NOT a possible value of 'n'?

- Ans
- 1. 5
  - 2. 4
  - 3. 3
  - 4. 6

Question ID : 26433073134  
Status : Not Answered  
Chosen Option : --

**Q.18** In an election between two candidates, one who gets 64% of the votes polled is elected by a majority of 4,340 votes. What is the total number of votes polled? (considering that all the polled votes are valid)

- Ans  1. 15500  
 2. 16500  
 3. 16000  
 4. 15000

Question ID : 26433075464  
Status : Answered  
Chosen Option : 1

**Q.19** Shashi buys an old refrigerator for ₹12,000 and spends ₹1,000 on its repairs. If he sells the refrigerator for ₹15,000, then his gain percentage is:

- Ans  1.  $13\frac{5}{13}\%$   
 2.  $14\frac{5}{13}\%$   
 3.  $15\frac{5}{13}\%$   
 4.  $16\frac{5}{13}\%$

Question ID : 26433080105  
Status : Answered  
Chosen Option : 3

**Q.20** The average of 9 numbers is 15. If the average of the first five numbers is 13 and the average of the last five numbers is 17, then what is the fifth number?

- Ans  1. 16  
 2. 18  
 3. 15  
 4. 20

Question ID : 26433075639  
Status : Answered  
Chosen Option : 3

Section : Part-D-English

**Q.1** Select the most appropriate synonym of the given word.

Omnipresent

- Ans  1. Powerful  
 2. Unique  
 3. Contemporary  
 4. Universal

Question ID : 26433072349  
Status : Answered  
Chosen Option : 4

Q.2 Choose the sentence that is in simple past tense:

- A. I was giving some of the chocolates to my younger sister.
- B. I had been giving some of the chocolates to my younger sister.
- C. I had given some of the chocolates to my younger sister.
- D. I gave some of the chocolates to my younger sister.

- Ans
- 1. A
  - 2. D
  - 3. B
  - 4. C

Question ID : 26433089017  
Status : Answered  
Chosen Option : 2

Q.3 Select the most appropriate synonym of the word given in brackets to fill in the blank.

Dishonest people always \_\_\_\_\_ (deceive) others.

- Ans
- 1. assist
  - 2. cheat
  - 3. gladden
  - 4. defend

Question ID : 26433070468  
Status : Answered  
Chosen Option : 2

Q.4 Select the most appropriate option that can substitute the underlined segment in the given sentence.

I asked Rita that how far her school was.

- Ans
- 1. how far her school is
  - 2. that how her school is
  - 3. then how far her school was
  - 4. how far her school was

Question ID : 26433099095  
Status : Answered  
Chosen Option : 4

Q.5 Select the INCORRECTLY spelt word.

- Ans
- 1. Passage
  - 2. Pancake
  - 3. Pasion
  - 4. Modern

Question ID : 26433085207  
Status : Answered  
Chosen Option : 3

**Q.6** Select the most appropriate synonym of the given word.

**Awkward**

- Ans**  1. Dormant  
 2. Asleep  
 3. Clever  
 4. Unskillful

Question ID : 26433072186  
Status : Answered  
Chosen Option : 4

**Q.7** Select the most appropriate ANTONYM for the underlined word in the following sentence.

He neglected his duties and was dismissed from his job.

- Ans**  1. Succeeded  
 2. Ignored  
 3. Attended  
 4. Scorned

Question ID : 26433093034  
Status : Answered  
Chosen Option : 3

**Q.8** Select the most appropriate option to fill in the blank.

My mother was \_\_\_\_\_ at my negligence and scolded me.

- Ans**  1. energetic  
 2. furious  
 3. thrilled  
 4. pleased

Question ID : 26433071882  
Status : Answered  
Chosen Option : 2

**Q.9** Select the most appropriate meaning of the given idiom.

**Light at the end of tunnel**

- Ans**  1. Something that signals the end of a difficult situation  
 2. An opening at the end of a matter  
 3. New light coming out from darkness  
 4. Preparing for examinations

Question ID : 26433073477  
Status : Answered  
Chosen Option : 1

Q.10 Select the most appropriate ANTONYM of the given word.

Retain

- Ans  1. Maintain  
 2. Forget  
 3. Restore  
 4. Attain

Question ID : 26433074052  
Status : Answered  
Chosen Option : 2

Q.11 Select the most appropriate meaning of the idiom in bold in the given sentence.

Because the shop is closing down, most of the stock is going **for a song**.

- Ans  1. Incredibly expensive  
 2. Incredibly inexpensive  
 3. Something that is soothing to your ears  
 4. Receive punishment

Question ID : 26433072451  
Status : Answered  
Chosen Option : 2

Q.12 Select the most appropriate ANTONYM to substitute the underlined word in the given sentence.

The goods being sold are of inferior quality.

- Ans  1. superior  
 2. anterior  
 3. exterior  
 4. ulterior

Question ID : 26433074009  
Status : Answered  
Chosen Option : 1

Q.13 Select the INCORRECTLY spelt word.

- Ans  1. Nutrient  
 2. Suitable  
 3. Seperate  
 4. Permanent

Question ID : 26433073500  
Status : Answered  
Chosen Option : 3

Q.14 Select the most appropriate ANTONYM of the given word.

Benign

- Ans  1. Favourable  
 2. Wicked  
 3. Friendly  
 4. Cheerful

Question ID : 26433073576  
Status : Answered  
Chosen Option : 2

**Q.15** Select the most appropriate option that can substitute the underlined segment in the given sentence.

The way someone talks and behaves introduces the characteristics of a person.

- Ans
- 1. symbolises the gestures
  - 2. effects the aura
  - 3. defines the personality
  - 4. postulates the personality

Question ID : 26433088502  
Status : Answered  
Chosen Option : 3

**Comprehension:**

In the following passage, some words have been deleted. Read the passage carefully and select the most appropriate option to fill in each blank.

Notebook software is included (1)\_\_\_\_\_ the SMART Board Interactive Whiteboard device. This programme includes a (2)\_\_\_\_\_ of tools for differentiating education. Professors and students can write on the SMART Board screen using a digital pen or (3)\_\_\_\_\_ finger if they have a SMART Board. Notebook files may be saved in various formats, printed, emailed, or posted, providing students with a total (4)\_\_\_\_\_ to course materials. Essentially, having a SMART Board available may (5)\_\_\_\_\_ everything that can be done on a computer.

**SubQuestion No : 16**

**Q.16** Select the most appropriate option to fill in blank no. 1.

- Ans
- 1. upon
  - 2. to
  - 3. along
  - 4. with

Question ID : 26433058721  
Status : Answered  
Chosen Option : 4

**Comprehension:**

In the following passage, some words have been deleted. Read the passage carefully and select the most appropriate option to fill in each blank.

Notebook software is included (1)\_\_\_\_\_ the SMART Board Interactive Whiteboard device. This programme includes a (2)\_\_\_\_\_ of tools for differentiating education. Professors and students can write on the SMART Board screen using a digital pen or (3)\_\_\_\_\_ finger if they have a SMART Board. Notebook files may be saved in various formats, printed, emailed, or posted, providing students with a total (4)\_\_\_\_\_ to course materials. Essentially, having a SMART Board available may (5)\_\_\_\_\_ everything that can be done on a computer.

**SubQuestion No : 17**

**Q.17** Select the most appropriate option to fill in blank no. 2.

- Ans
- 1. total
  - 2. limit
  - 3. number
  - 4. design

Question ID : 26433058722  
Status : Answered  
Chosen Option : 3

**Comprehension:**

In the following passage, some words have been deleted. Read the passage carefully and select the most appropriate option to fill in each blank.

Notebook software is included (1) \_\_\_\_\_ the SMART Board Interactive Whiteboard device. This programme includes a (2) \_\_\_\_\_ of tools for differentiating education. Professors and students can write on the SMART Board screen using a digital pen or (3) \_\_\_\_\_ finger if they have a SMART Board. Notebook files may be saved in various formats, printed, emailed, or posted, providing students with a total (4) \_\_\_\_\_ to course materials. Essentially, having a SMART Board available may (5) \_\_\_\_\_ everything that can be done on a computer.

**SubQuestion No : 18**

**Q.18 Select the most appropriate option to fill in blank no. 3.**

- Ans**  1. their  
 2. there  
 3. those  
 4. these

Question ID : 26433058723  
Status : Answered  
Chosen Option : 1

**Comprehension:**

In the following passage, some words have been deleted. Read the passage carefully and select the most appropriate option to fill in each blank.

Notebook software is included (1) \_\_\_\_\_ the SMART Board Interactive Whiteboard device. This programme includes a (2) \_\_\_\_\_ of tools for differentiating education. Professors and students can write on the SMART Board screen using a digital pen or (3) \_\_\_\_\_ finger if they have a SMART Board. Notebook files may be saved in various formats, printed, emailed, or posted, providing students with a total (4) \_\_\_\_\_ to course materials. Essentially, having a SMART Board available may (5) \_\_\_\_\_ everything that can be done on a computer.

**SubQuestion No : 19**

**Q.19 Select the most appropriate option to fill in blank no. 4.**

- Ans**  1. access  
 2. validity  
 3. download  
 4. exception

Question ID : 26433058724  
Status : Answered  
Chosen Option : 1

**Comprehension:**

In the following passage, some words have been deleted. Read the passage carefully and select the most appropriate option to fill in each blank.

Notebook software is included (1) \_\_\_\_\_ the SMART Board Interactive Whiteboard device. This programme includes a (2) \_\_\_\_\_ of tools for differentiating education. Professors and students can write on the SMART Board screen using a digital pen or (3) \_\_\_\_\_ finger if they have a SMART Board. Notebook files may be saved in various formats, printed, emailed, or posted, providing students with a total (4) \_\_\_\_\_ to course materials. Essentially, having a SMART Board available may (5) \_\_\_\_\_ everything that can be done on a computer.

**SubQuestion No : 20**

**Q.20 Select the most appropriate option to fill in blank no. 5.**

- Ans**  1. form  
 2. enlighten  
 3. create  
 4. enhance

Question ID : 26433058725  
Status : Answered  
Chosen Option : 3



Section : Part-D-Hindi

Q.1 निम्नलिखित वाक्य के किस शब्द में वर्तनी सम्बन्धी अशुद्धि है?  
तुफान से डरकर नौका पार नहीं होती।

- Ans
- 1. पार
  - 2. डरकर
  - 3. तुफान
  - 4. नौका

Question ID : 26433066826  
Status : Not Answered  
Chosen Option : --

Q.2 अपना गुस्सा काबू में करो, शांत रहो।  
निम्न में से किस विकल्प में उपरोक्त वाक्य में प्रयुक्त 'शांत' शब्द का विलोम नहीं दिया गया है?

- Ans
- 1. उद्विग्न
  - 2. स्थिर
  - 3. उत्तेजित
  - 4. अशांत

Question ID : 26433080872  
Status : Not Answered  
Chosen Option : --

Q.3 रोहन ने मंहगा सफारी सूट पहन रखा था और उसके साथ फटे हुए चमरौधे जूते पहन रखे थे, ये तो वही  
हुआ \_\_\_\_\_ !  
रिक्त स्थान की पूर्ति उचित मुहावरे द्वारा कीजिए।

- Ans
- 1. आधा गंगा आधा जमुना
  - 2. दिखने में अलग असल में अलग
  - 3. रंगा सियार
  - 4. आधा तीतर आधा बटेर

Question ID : 26433062602  
Status : Not Answered  
Chosen Option : --

Q.4 वह उसका चश्मा भूल गया।  
उपरोक्त वाक्य में रेखांकित शब्द के स्थान पर उचित शब्द क्या होगा?

- Ans
- 1. क्या
  - 2. किसका
  - 3. अपना
  - 4. कुछ

Question ID : 26433062202  
Status : Not Answered  
Chosen Option : --

Q.5 'रमेश को जब उत्तर नहीं मिला तो वह दूसरी तरफ चला गया।' वाक्य में प्रयुक्त 'उत्तर' शब्द निम्न में से  
किस अर्थ को व्यक्त करता है?

- Ans
- 1. जवाब
  - 2. पिछला
  - 3. उत्तर दिशा
  - 4. अतीत

Question ID : 26433069731  
Status : Not Answered  
Chosen Option : --

Q.6 दिए गए वाक्य में प्रयुक्त गलत विभक्ति चिह्न के स्थान पर सही विभक्ति चिह्न होगा—  
छुट्टियों में सभी बच्चों का अपने मम्मी-पापा के साथ घूमने जाने का कार्यक्रम बना लिया था।

- Ans
- 1. ने
  - 2. से
  - 3. द्वारा
  - 4. पर

Question ID : 26433062865  
Status : Not Answered  
Chosen Option : --

Q.7 'जो कम बोलता है' वाक्यांश के लिए एक शब्द क्या होगा?

- Ans
- 1. मृदुभाषी
  - 2. कटुभाषी
  - 3. मितभाषी
  - 4. अपभाषी

Question ID : 26433070100  
Status : Not Answered  
Chosen Option : --

Q.8 रेखांकित शब्द-समूह के लिए सर्वाधिक उपयुक्त विकल्प चुनें।  
आज दोपहर के बाद मैं व्यस्त हूँ।

- Ans
- 1. अपराह्न
  - 2. पूर्वाह्न
  - 3. सुबह
  - 4. भोर

Question ID : 26433062286  
Status : Not Answered  
Chosen Option : --

Q.9 उन्होंने बोल उठे।

उपरोक्त वाक्य में त्रुटि पहचानकर वाक्य शुद्ध कीजिए।

- Ans
- 1. वे बोल उठे।
  - 2. वे ने बोल उठे।
  - 3. उसने बोल उठे।
  - 4. उन्होंने बोल उठें।

Question ID : 26433063043  
Status : Not Answered  
Chosen Option : --

Q.10 'घर में गंगा बहाना' मुहावरे का सही अर्थ है -

- Ans
- 1. रोज गंगा स्नान करना
  - 2. धार्मिक प्रवृत्ति का होना
  - 3. निश्चल व्यक्ति होना
  - 4. घर में सभी सुविधाएँ होना

Question ID : 26433065926  
Status : Not Answered  
Chosen Option : --

Q.11 'राधा गौर वर्ण की सुंदर महिला थी।' वाक्य में प्रयुक्त 'वर्ण' शब्द निम्न में से किस अर्थ को व्यक्त करता है?

- Ans
- 1. जाति
  - 2. लक्षण
  - 3. रंग
  - 4. रूप

Question ID : 26433069727  
Status : Not Answered  
Chosen Option : --

Q.12 'जानने की इच्छा करने वाला' वाक्यांश के लिए उचित शब्द क्या होगा?

- Ans
- 1. दूरदर्शी
  - 2. जितेन्द्रिय
  - 3. जिज्ञासु
  - 4. युयुत्सु

Question ID : 26433067063  
Status : Not Answered  
Chosen Option : --

Q.13 'ग्रामवास \_\_\_\_\_।' उपर्युक्त वाक्य में रिक्त स्थान के लिए उपयुक्त विकल्प निम्न में से क्या होगा?

- Ans
- 1. से अभिप्राय होता है ग्राम में वास करना
  - 2. से अभिप्राय होता है ग्राम द्वारा वास करना
  - 3. से अभिप्राय होता है ग्राम के लिए वास करना
  - 4. से अभिप्राय होता है ग्राम से वास करना

Question ID : 26433067040  
Status : Not Answered  
Chosen Option : --

Q.14 तुम्हारे चले जाने से मुझे बहुत दुःख हुआ।

रेखांकित शब्द के उचित पर्यायवाची शब्द का चयन कीजिए।

- Ans
- 1. ईप्सा
  - 2. बेशर
  - 3. व्यथा
  - 4. तापस

Question ID : 26433079625  
Status : Not Answered  
Chosen Option : --

Q.15 वर्तनी की दृष्टि से शुद्ध वाक्य का चयन कीजिए-

- Ans
- 1. काम पूरा कर डालो, नहीं तो जूर्माना होगा।
  - 2. इस समय सरदी है, इस्लिए कोट पहन लो।
  - 3. वक्त्र निकल जाता है, पर बात याद रह जाती है।
  - 4. दोश तुम्हारा है, और इसका मुझे विश्वास है।

Question ID : 26433062894  
Status : Not Answered  
Chosen Option : --

**Comprehension:**

निम्नलिखित गद्यांश में कुछ शब्दों को हटा दिया गया है। दिए गए विकल्पों की सहायता से रिक्त स्थानों की पूर्ति कीजिए। प्रत्येक संख्या के लिए सबसे उपयुक्त विकल्प का चयन करें।  
परमात्मा ने सभी नर-नारियों की आँखों में 1. \_\_\_\_\_ दिए हैं। इन्हीं आंसुओं के बल पर कोई साधारण मनुष्य 2. \_\_\_\_\_ बन जाता है और कोई राक्षस पिघलकर फिर से 3. \_\_\_\_\_ बन जाता है। जिस मनुष्य में जितनी अधिक 4. \_\_\_\_\_ होती है वह उतना ही कोमल, उदार और 5. \_\_\_\_\_ इंसान बन जाता है।

**SubQuestion No : 16****Q.16 रिक्त स्थान 1 की पूर्ति के लिए सबसे उपयुक्त विकल्प का चयन करें।**

- Ans**  1. आँसू  
 2. हँसी  
 3. मुस्कान  
 4. स्मिति

Question ID : 264330110861  
Status : Not Answered  
Chosen Option : --

**Comprehension:**

निम्नलिखित गद्यांश में कुछ शब्दों को हटा दिया गया है। दिए गए विकल्पों की सहायता से रिक्त स्थानों की पूर्ति कीजिए। प्रत्येक संख्या के लिए सबसे उपयुक्त विकल्प का चयन करें।  
परमात्मा ने सभी नर-नारियों की आँखों में 1. \_\_\_\_\_ दिए हैं। इन्हीं आंसुओं के बल पर कोई साधारण मनुष्य 2. \_\_\_\_\_ बन जाता है और कोई राक्षस पिघलकर फिर से 3. \_\_\_\_\_ बन जाता है। जिस मनुष्य में जितनी अधिक 4. \_\_\_\_\_ होती है वह उतना ही कोमल, उदार और 5. \_\_\_\_\_ इंसान बन जाता है।

**SubQuestion No : 17****Q.17 रिक्त स्थान 2 की पूर्ति के लिए सबसे उपयुक्त विकल्प का चयन करें।**

- Ans**  1. दानव  
 2. देवता  
 3. असुर  
 4. निशाचर

Question ID : 264330110862  
Status : Not Answered  
Chosen Option : --

**Comprehension:**

निम्नलिखित गद्यांश में कुछ शब्दों को हटा दिया गया है। दिए गए विकल्पों की सहायता से रिक्त स्थानों की पूर्ति कीजिए। प्रत्येक संख्या के लिए सबसे उपयुक्त विकल्प का चयन करें।  
परमात्मा ने सभी नर-नारियों की आँखों में 1. \_\_\_\_\_ दिए हैं। इन्हीं आंसुओं के बल पर कोई साधारण मनुष्य 2. \_\_\_\_\_ बन जाता है और कोई राक्षस पिघलकर फिर से 3. \_\_\_\_\_ बन जाता है। जिस मनुष्य में जितनी अधिक 4. \_\_\_\_\_ होती है वह उतना ही कोमल, उदार और 5. \_\_\_\_\_ इंसान बन जाता है।

**SubQuestion No : 18****Q.18 रिक्त स्थान 3 की पूर्ति के लिए सबसे उपयुक्त विकल्प का चयन करें।**

- Ans**  1. सच्चा मानव  
 2. क्रोधी मानव  
 3. अहंकारी मानव  
 4. बुरा मानव

Question ID : 264330110863  
Status : Not Answered  
Chosen Option : --

**Comprehension:**

निम्नलिखित गद्यांश में कुछ शब्दों को हटा दिया गया है। दिए गए विकल्पों की सहायता से रिक्त स्थानों की पूर्ति कीजिए। प्रत्येक संख्या के लिए सबसे उपयुक्त विकल्प का चयन करें।  
परमात्मा ने सभी नर-नारियों की आँखों में 1. \_\_\_\_\_ दिए हैं। इन्हीं आंसुओं के बल पर कोई साधारण मनुष्य 2. \_\_\_\_\_ बन जाता है और कोई राक्षस पिघलकर फिर से 3. \_\_\_\_\_ बन जाता है। जिस मनुष्य में जितनी अधिक 4. \_\_\_\_\_ होती है वह उतना ही कोमल, उदार और 5. \_\_\_\_\_ इंसान बन जाता है।

**SubQuestion No : 19**

**Q.19** रिक्त स्थान 4 की पूर्ति के लिए सबसे उपयुक्त विकल्प का चयन करें।

- Ans**
- 1. दया
  - 2. बेदर्दी
  - 3. क्रूरता
  - 4. निर्दयता

Question ID : 264330110864  
Status : Not Answered  
Chosen Option : --

**Comprehension:**

निम्नलिखित गद्यांश में कुछ शब्दों को हटा दिया गया है। दिए गए विकल्पों की सहायता से रिक्त स्थानों की पूर्ति कीजिए। प्रत्येक संख्या के लिए सबसे उपयुक्त विकल्प का चयन करें।  
परमात्मा ने सभी नर-नारियों की आँखों में 1. \_\_\_\_\_ दिए हैं। इन्हीं आंसुओं के बल पर कोई साधारण मनुष्य 2. \_\_\_\_\_ बन जाता है और कोई राक्षस पिघलकर फिर से 3. \_\_\_\_\_ बन जाता है। जिस मनुष्य में जितनी अधिक 4. \_\_\_\_\_ होती है वह उतना ही कोमल, उदार और 5. \_\_\_\_\_ इंसान बन जाता है।

**SubQuestion No : 20**

**Q.20** रिक्त स्थान 5 की पूर्ति के लिए सबसे उपयुक्त विकल्प का चयन करें।

- Ans**
- 1. पूजनीय
  - 2. बदनाम
  - 3. घृण्य
  - 4. निंदनीय

Question ID : 264330110865  
Status : Not Answered  
Chosen Option : --

## Constable GD in CAPFs SSF Rifleman GD in Assam Rifles and Sepoy in NCB Examination 2022

Roll Number	@Qmaths Telegram Channel
Candidate Name	@Qmaths Telegram Channel
Venue Name	ION Digital Zone iDZ 1 Moula Ali
Exam Date	12/01/2023
Exam Time	2:30 PM - 3:30 PM
Subject	Constable GD Examination 2022

### Section : Part-A-General Intelligence and Reasoning

**Q.1** Seven people D, E,F,G,H,I and J are sitting in a straight row, facing north. Only three people sit between D and H. E sits fourth to the left of J. Only D is between E and I. J sits third to the right of F. Who sits at the second position from the right end of the row?

- Ans
- 1. E
  - 2. D
  - 3. H
  - 4. I

Question ID : 26433068285  
Status : Answered  
Chosen Option : 3

**Q.2** Which of the following numbers will replace the question mark (?) in the given series?  
6, 10, 19, 35, ?, 96

- Ans
- 1. 70
  - 2. 68
  - 3. 60
  - 4. 74

Question ID : 26433070220  
Status : Answered  
Chosen Option : 3

**Q.3** Three statements are given followed by three conclusions numbered 1, 2 and 3. Assuming the statements to be true, even if they seem to be at variance with commonly known facts, decide which of the conclusions logically follow(s) from the statements.

Statements:

Some shoes are slippers.

Some slippers are socks.

All socks are sandals.

Conclusions:

1. Some sandals are shoes.

2. Some sandals are slippers.

3. Some socks are shoes.

- Ans
- 1. Only conclusion 2 follows
  - 2. Only conclusions 1 and 2 follow
  - 3. Only conclusions 2 and 3 follow
  - 4. Only conclusion 3 follows

Question ID : 26433087132  
Status : Answered  
Chosen Option : 1

**Q.4** Select the option that is related to the fifth number in the same way as the second number is related to the first number and the fourth number is related to the third number.

18 : 4 :: 36 : 16 :: 27 : ?

- Ans**
- 1. 8
  - 2. 9
  - 3. 7
  - 4. 10

Question ID : 26433069412  
Status : Not Answered  
Chosen Option : --

**Q.5** Six friends (Aman, Biplab, Chirantan, Divya, Elizabeth and Firoz) are sitting around a circular table facing the centre. Aman sits third to the left of Biplab. Chirantan is an immediate neighbour of Aman. Elizabeth sits second to the right of Divya. Chirantan is not an immediate neighbour of Divya. Who sits between Aman and Elizabeth?

- Ans**
- 1. Firoz
  - 2. Divya
  - 3. Chirantan
  - 4. Biplab

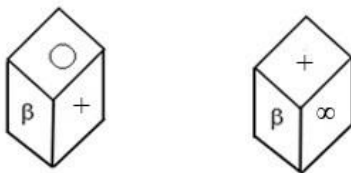
Question ID : 26433092769  
Status : Answered  
Chosen Option : 3

**Q.6** In a certain code language, 'fruit hat string' is coded as 'worm bee wheel', 'hat fruit' is coded as 'bee worm', and 'string hat' is coded as 'wheel bee'. What is the code word for 'fruit'?

- Ans**
- 1. bee
  - 2. worm
  - 3. wheel
  - 4. hat

Question ID : 26433079368  
Status : Answered  
Chosen Option : 2

**Q.7** Two different positions of the same dice are shown having symbols- +, @, O, ∞, €, and β. Find the symbol on the face opposite the face showing 'O'.



- Ans**
- 1. €
  - 2. @
  - 3. +
  - 4. ∞

Question ID : 26433085527  
Status : Answered  
Chosen Option : 4

**Q.8** Select the option that is related to the third word in the same way as the second word is related to the first word. (The words must be considered as meaningful English words and must not be related to each other based on the number of letters/number of consonants/vowels in the word.)  
**Virology : Viruses :: Cardiology : ?**

- Ans**
- 1. Skull
  - 2. Head
  - 3. Lungs
  - 4. Heart

Question ID : 26433067365  
 Status : Answered  
 Chosen Option : 4

**Q.9** Which figure should replace the question mark (?) if the series were to be continued?

P	L	=	□	O	=	L	S	
O	Z	□	P	S	△	△	P	S
=	△	O	L	L	□	△	=	?

- Ans**
- 1. 

△	L
□	↑
=	S
  - 2. 

△	L
□	O
=	↑
	S
  - 3. 

△	□
L	↑
O	=
	S
  - 4. 

S	=
□	O
L	↑
	△

Question ID : 26433076638  
 Status : Not Answered  
 Chosen Option : --

**Q.10** Which two signs should be interchanged to make the below equation mathematically correct?  
 $120 + 18 \times 40 - 10 \div 20 = 172$

- Ans**
- 1. - and +
  - 2. + and ×
  - 3. + and ÷
  - 4. ÷ and -

Question ID : 264330117538  
 Status : Answered  
 Chosen Option : 4



Q.11 Which of the following letter-clusters will replace the question mark (?) in the given series?

GMPJ, HLOK, IKNL, JJMM, ?

- Ans
- 1. KKMN
  - 2. LKLN
  - 3. LKLO
  - 4. KILN

Question ID : 26433076442  
Status : Answered  
Chosen Option : 4

Q.12 In a certain code language, 'PARENT' is written as '148' and 'WRANGLE' is written as '160'. How will 'GRANTED' be written in that language?

- Ans
- 1. 134
  - 2. 67
  - 3. 138
  - 4. 69

Question ID : 26433069472  
Status : Answered  
Chosen Option : 3

Q.13 Which of the following numbers will replace the question mark (?) in the given series?  
20, 24, 33, ?, 107, 228, 397

- Ans
- 1. 82
  - 2. 86
  - 3. 29
  - 4. 58

Question ID : 26433076753  
Status : Answered  
Chosen Option : 4

Q.14 Which letter-cluster will replace the question mark (?) to complete the given series?  
BDGF, ACFE, ?, YADC, XZCB

- Ans
- 1. ZBED
  - 2. YBED
  - 3. ZAFE
  - 4. YAFD

Question ID : 26433067713  
Status : Answered  
Chosen Option : 1

**Q.15** Select the correct combination of mathematical signs to sequentially replace the \* signs and to balance the given equation.

$$(120 * 15) * 9 * \sqrt[4]{81} * 17 * 28 * 95$$

- Ans**
- 1. ÷, -, =, -, ÷, ×
  - 2. ÷, -, =, -, ×, -
  - 3. ×, =, -, ÷, +, -
  - 4. ÷, ×, +, ×, -, =

Question ID : 26433081000  
 Status : Answered  
 Chosen Option : 4

**Q.16** Which option represents the correct order of the given words as they would appear in the English dictionary?

- 1 culture
- 2 cult
- 3 cultivate
- 4 cupid
- 5 cumin

- Ans**
- 1. 2,3,1,5,4
  - 2. 3,2,1,4,5
  - 3. 2,3,1,4,5
  - 4. 2,1,3,5,4

Question ID : 26433069286  
 Status : Answered  
 Chosen Option : 1

**Q.17** Select the correct mirror image of the given figure when the mirror is placed at MN as shown below.



- Ans**
- 1. TnəMəɛnt
  - 2. TnəMəɛnt
  - 3. TnəMəɛnt
  - 4. TnəMəɛnt

Question ID : 26433085556  
 Status : Answered  
 Chosen Option : 1

**Q.18** Select the option that is related to the fifth letter-cluster in the same way as the second letter-cluster is related to the first letter-cluster and the fourth letter-cluster is related to the third letter-cluster.

IFHO : LCEK :: HIJK : KFGG :: QLGK : ?

- Ans**
- 1. ITHD
  - 2. TIDG
  - 3. ITDH
  - 4. TIHD

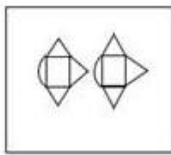
Question ID : 26433080465  
Status : Answered  
Chosen Option : 2

**Q.19** Select the option figure in which the question figure is embedded (Rotation is NOT allowed).

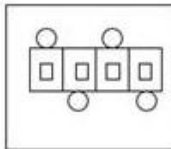


**Ans**

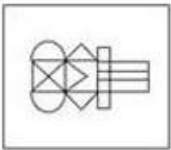
1.



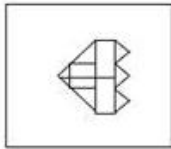
2.



3.



4.



Question ID : 26433070209  
Status : Answered  
Chosen Option : 3

**Q.20** A is married to Z. Z has 3 children L, M and N. Z is not the father of the children. P is the mother of A. L is the husband of D. M has 2 daughters H and J. How is Z related to P?

- Ans**
- 1. Daughter
  - 2. Daughter in law
  - 3. Son
  - 4. Mother

Question ID : 26433074603  
Status : Answered  
Chosen Option : 2

**Q.1 Which is NOT the correct statement about the Governor?**

- Ans**  1. He appoints the Chief Minister and other Ministers.
2. He has the power to grant pardons, reprieves and forgive the death penalty of a person
3. He may issue Ordinances under certain circumstances
4. The state executive power is vested with the Governor.

Question ID : 26433054107  
Status : Answered  
Chosen Option : 2

**Q.2 Identify the country called 'the country of winds'.**

- Ans**  1. Denmark
2. Czech Republic
3. Germany
4. Poland

Question ID : 26433096236  
Status : Not Answered  
Chosen Option : --

**Q.3 In which year did Congress and Muslim League signed the Lucknow pact?**

- Ans**  1. 1914
2. 1916
3. 1910
4. 1912

Question ID : 264330115706  
Status : Not Answered  
Chosen Option : --

**Q.4 \_\_\_\_\_ can be visualized as a functional unit of nature, where living organisms interact among themselves and also with the surrounding physical environment.**

- Ans**  1. A family
2. A universe
3. An ecosystem
4. A herd

Question ID : 264330115248  
Status : Answered  
Chosen Option : 3

**Q.5 What is the Full Form of BCCI?**

- Ans**  1. Board of Cricket Control
2. Board of Control of Cycling in India
3. Board of Control for Cricket in India
4. Basic Cricket Control Board

Question ID : 264330116286  
Status : Answered  
Chosen Option : 3

Q.6 India's first five-year plan was launched in \_\_\_\_\_.

- Ans
- 1. 1901
  - 2. 1961
  - 3. 1971
  - 4. 1951

Question ID : 264330115383  
Status : Not Answered  
Chosen Option : --

Q.7 Apart from the Cash Reserve Ratio, banks are also required to keep some reserves in liquid form in the short term, referred as \_\_\_\_\_

- Ans
- 1. Statutory Liquidity Repo
  - 2. State Liquidity Ratio
  - 3. Statutory Liquidity Ratio
  - 4. Statutory License Ratio

Question ID : 264330115325  
Status : Answered  
Chosen Option : 3

Q.8 In which year was the Mahatma Gandhi National Rural Employment Guarantee Act (MGNREGA) passed?

- Ans
- 1. 1993
  - 2. 2005
  - 3. 1995
  - 4. 2000

Question ID : 264330116072  
Status : Answered  
Chosen Option : 2

Q.9 President of India appointed senior advocate \_\_\_\_\_ as the next Attorney-General for India in September 2022.

- Ans
- 1. Ram Jethmalani
  - 2. R Venkataramani
  - 3. Pravin Anand
  - 4. Jasbina Ahluwalia

Question ID : 264330114917  
Status : Not Answered  
Chosen Option : --

Q.10 Who was the prime minister of India when the fundamental duties were included in the Indian constitution?

- Ans
- 1. Indira Gandhi
  - 2. Rajiv Gandhi
  - 3. Manmohan Singh
  - 4. Jawaharlal Nehru

Question ID : 26433089951  
Status : Not Answered  
Chosen Option : --

Q.11 Green Revolution mainly revolves around \_\_\_\_\_.

- Ans
- 1. Rain harvesting
  - 2. Natural Vegetation
  - 3. High Yield Variety Programme
  - 4. Use of Natural Fertilizers

Question ID : 264330116152  
Status : Answered  
Chosen Option : 3

Q.12 Who was the coach of the U-19 Indian cricket team at the ICC U19 World Cup 2022?

- Ans
- 1. Ajit Agarkar
  - 2. Mohammed Kaif
  - 3. Anil Kumble
  - 4. Hrishikesh Kaniitkar

Question ID : 26433090750  
Status : Not Answered  
Chosen Option : --

Q.13 Thiruvathira festival is mainly celebrated in which of these states?

- Ans
- 1. Odisha
  - 2. Assam
  - 3. Punjab
  - 4. Kerala

Question ID : 264330109305  
Status : Answered  
Chosen Option : 4

Q.14 What is used for manufacturing synthetic fibers, synthetic rubber, plastics, dye-stuffs, drugs and pharmaceuticals?

- Ans
- 1. sugar cane
  - 2. petrochemicals
  - 3. natural gas
  - 4. coal

Question ID : 264330115572  
Status : Answered  
Chosen Option : 1

Q.15 Which of the following is NOT a sedimentary rock?

- Ans
- 1. Granite
  - 2. Sand stone
  - 3. Loess
  - 4. Shale

Question ID : 26433089661  
Status : Not Answered  
Chosen Option : --

**Q.16 Who has been appointed as the Revenue Secretary by the Indian government in October 2022?**

- Ans**  1. S.S Nakul  
 2. Sanjay Malhotra  
 3. Tarun Bajaj  
 4. Ajay Bhushan Pandey

Question ID : 264330115028  
Status : **Answered**  
Chosen Option : 3

**Q.17 Who presented the Criminal Procedure (Identification) Bill, 2022 on March 28 in Lok Sabha?**

- Ans**  1. Meenakshi Lekhi  
 2. Ajay Kumar Mishra  
 3. Krishan Pal  
 4. Rao Inderjit Singh

Question ID : 264330116218  
Status : **Not Answered**  
Chosen Option : --

**Q.18 According to Megasthenes, the guards of Chandragupta rode \_\_\_\_\_ decorated with gold and silver during royal processions.**

- Ans**  1. elephants  
 2. unicorns  
 3. bulls  
 4. horses

Question ID : 26433085212  
Status : **Answered**  
Chosen Option : 1

**Q.19 Kalbelia is a famous folk dance of which Indian state?**

- Ans**  1. Odisha  
 2. Bihar  
 3. West Bengal  
 4. Rajasthan

Question ID : 26433072923  
Status : **Not Answered**  
Chosen Option : --

**Q.20 Which of the following festivals celebrates the harvest season in August – September?**

- Ans**  1. Onam  
 2. Makar Sankranti  
 3. Lohri  
 4. Baisakhi

Question ID : 264330115872  
Status : **Not Answered**  
Chosen Option : --

Q.1 The ratio of the third proportion of 5 and 12 with the fourth proportion of 5, 8 and 9 is:

- Ans
- 1. 2 : 1
  - 2. 2 : 3
  - 3. 1 : 2
  - 4. 3 : 2

Question ID : 26433087372  
Status : Answered  
Chosen Option : 1

Q.2 Anil started his journey in the morning. Till 10 a.m., he covered  $\frac{1}{2}$  of his journey, and on the same day till 1 a.m., he covered  $\frac{4}{5}$  of his journey. At what time did he start his journey?

- Ans
- 1. 2.00 a.m.
  - 2. 4.00 a.m.
  - 3. 5.00 a.m.
  - 4. 3.30 a.m.

Question ID : 26433075350  
Status : Answered  
Chosen Option : 3

Q.3 A cone of height 8 cm and base radius 4 cm is carved from a rectangular block of wood 8 cm × 6 cm × 4 cm. The percentage of wood wasted is approximately:

- Ans
- 1. 56%
  - 2. 30%
  - 3. 58%
  - 4. 48%

Question ID : 26433075399  
Status : Answered  
Chosen Option : 2

Q.4 The Difference between compound interest, compounding annually and simple interest on an amount of ₹ 500 for 2 years is ₹ 1.25. What is the rate of interest per annum?

- Ans
- 1. 2%
  - 2. 4%
  - 3. 3%
  - 4. 5%

Question ID : 26433074296  
Status : Answered  
Chosen Option : 4



Q.5 An article is listed at ₹1,200. A customer pays ₹972 for it after getting two successive discounts. If the rate of the first discount is 10%, then the rate of the second discount is:

- Ans
- 1. 14%
  - 2. 10%
  - 3. 16%
  - 4. 12%

Question ID : 26433082384  
Status : Answered  
Chosen Option : 2

Q.6 The fourth proportional to 3, 12, 14 is:

- Ans
- 1. 35
  - 2. 28
  - 3. 56
  - 4. 49

Question ID : 26433080119  
Status : Answered  
Chosen Option : 3

Q.7 An iron ball of radius 21 cm is melted and recast into spherical balls of radius 7 cm. Find the number of spherical balls.

- Ans
- 1. 9
  - 2. 21
  - 3. 18
  - 4. 27

Question ID : 26433073052  
Status : Answered  
Chosen Option : 4

Q.8 Find the sum of the digits of the smallest 6-digit number divisible by 18, 24 and 25.

- Ans
- 1. 12
  - 2. 10
  - 3. 15
  - 4. 9

Question ID : 264330116634  
Status : Answered  
Chosen Option : 4

Q.9 The value of  $1 \div 2 + 3 - 5 \times \frac{1}{3}$  of  $15 - \{75 \div (28 - 3)\}$  is:

- Ans
- 1. -25
  - 2.  $-\frac{49}{2}$
  - 3.  $\frac{49}{2}$
  - 4. 25

Question ID : 26433075177  
Status : Answered  
Chosen Option : 2

**Q.10** A vegetable vendor does his sales using a weight which is 12% less than the actual weight and earns a profit of 32% on the cost price. Find the total profit percentage?

- Ans
- 1. 44%
  - 2. 40%
  - 3. 50%
  - 4. 45%

Question ID : 26433075913  
Status : Answered  
Chosen Option : 3

**Q.11** A and B can complete a work in 18 days and 36 days respectively. They work together for 8 days and then A leaves. How many days will B take to complete the rest of the work?

- Ans
- 1. 15
  - 2. 12
  - 3. 18
  - 4. 10

Question ID : 26433076403  
Status : Answered  
Chosen Option : 2

**Q.12** What is the average of the first 10 multiples of 3?

- Ans
- 1. 16.5
  - 2. 14.5
  - 3. 15.5
  - 4. 11.5

Question ID : 26433076393  
Status : Answered  
Chosen Option : 1

**Q.13** If the price of potatoes increases by 10 percent, then by how much percent a user has to cut down on his consumption of potatoes, so that the expenditure on potatoes remains unchanged?

- Ans
- 1. 16.4 percent
  - 2. 15.8 percent
  - 3. 12.5 percent
  - 4. 9.1 percent

Question ID : 264330116822  
Status : Answered  
Chosen Option : 4

**Q.14** The current value of a car is ₹ 8,50,000 and its value is depreciating at the rate of 10% per annum. What will be its value (in ₹ ) after 4 years?

- Ans
- 1. 5,47,685
  - 2. 5,57,685
  - 3. 5,67,685
  - 4. 5,57,865

Question ID : 26433075560  
Status : Answered  
Chosen Option : 2

**Q.15** What is the faulty weight used by a dishonest shopkeeper instead of the original weight of 1 kg to get a profit of 25%?

- Ans**
- 1. 250 grams
  - 2. 800 grams
  - 3. 640 grams
  - 4. 980 grams

Question ID : 26433075810  
Status : Answered  
Chosen Option : 2

**Q.16** A, B, and C can complete a work in 30, 60, and 120 days respectively. A left the work 10 days before the work was completed and B left 5 days before the completion of the work. Find the number of days required to complete the whole work.

- Ans**
- 1. 170/7 days
  - 2. 144/7 days
  - 3. 89/7 days
  - 4. 190/7 days

Question ID : 264330116902  
Status : Answered  
Chosen Option : 1

**Q.17** Mr. Sharma spends 15% of his total income on rent and 75% of the remaining part on other expenses and still saves Rs.1,700 monthly. What is his monthly income?

- Ans**
- 1. Rs.8,000
  - 2. Rs.7,000
  - 3. Rs.7,500
  - 4. Rs.8,500

Question ID : 26433080296  
Status : Answered  
Chosen Option : 1

**Q.18** Aravind runs  $\frac{5}{4}$  times as fast as Bhanu. In a race, if Aravind gives a lead of 60m to Bhanu, find the distance from the starting point where both of them will meet.

- Ans**
- 1. 320 m
  - 2. 340 m
  - 3. 360 m
  - 4. 300 m

Question ID : 26433063957  
Status : Answered  
Chosen Option : 4

Q.19 The marked price of a double bed is ₹42,000. The customer gets a cash discount of ₹1,000 and gets a scratch card promising a discount of 5% to 10%. Determine the difference between the least and the maximum selling price of the bed.

- Ans
- 1. ₹1,880
  - 2. ₹2,050
  - 3. ₹1,910
  - 4. ₹1,940

Question ID : 26433080111  
Status : Answered  
Chosen Option : 2

Q.20 Arjun rides his bike 10 km at an average speed of 30 km/h, and again travels 14 km at an average speed of 25 km/h. What is his average speed (approx.) for the entire trip?

- Ans
- 1. 27.68 km/h
  - 2. 26.87 km/h
  - 3. 29.81 km/h
  - 4. 28.76 km/h

Question ID : 26433076221  
Status : Answered  
Chosen Option : 2

Section : Part-D-English

Q.1 Select the word segment that substitutes (replaces) the bracketed word segment correctly and completes the sentence meaningfully.

When the last Tsar of Russia (were arrested by revolutionaries), he and his family were hiding at a palace near St. Petersburg; now that palace is open to tourists.

- Ans
- 1. is arresting from revolutionaries
  - 2. was arrested by revolutionaries
  - 3. were arrest by revolutionaries
  - 4. is arrested by revolutionaries

Question ID : 26433088964  
Status : Answered  
Chosen Option : 2

Q.2 Select the correct word for the blanks in the given sentence.

Sushant is a very \_\_\_\_\_ person and the \_\_\_\_\_ of first ten natural numbers is 5.5.

- Ans
- 1. clever
  - 2. mean
  - 3. honest
  - 4. shrewd

Question ID : 26433060539  
Status : Answered  
Chosen Option : 2

Q.3 Select the most appropriate synonym of the given word.

Consistent

- Ans
- 1. Evolve
  - 2. Change
  - 3. Constant
  - 4. Alter

Question ID : 26433073636  
Status : Answered  
Chosen Option : 3

Q.4 Select the correct word for the blanks in the given sentence.

The tree has a brown \_\_\_\_\_ and the dogs \_\_\_\_\_ at the stranger.

- Ans
- 1. tail
  - 2. sound
  - 3. trunk
  - 4. bark

Question ID : 26433060529  
Status : Answered  
Chosen Option : 4

Q.5 Select the most appropriate synonym of the word given below to fill in the blank in the following sentence.

Pamper

My grandmother said, "Don't \_\_\_\_\_ the kid. He will get spoiled".

- Ans
- 1. bend
  - 2. comfortable
  - 3. attend
  - 4. coddle

Question ID : 26433084777  
Status : Answered  
Chosen Option : 2

Q.6 Select the most appropriate option to substitute the underlined segment in the given sentence.

This is an olden building of historical importance.

- Ans
- 1. ancient
  - 2. elder
  - 3. older
  - 4. very older

Question ID : 264330100291  
Status : Answered  
Chosen Option : 1

**Q.7** The following sentence has been split into four segments. Identify the segment that contains a grammatical error.

The peon / was brought / a cup of / coffee for Naina.

- Ans**
- 1. coffee for Naina
  - 2. a cup of
  - 3. was brought
  - 4. The peon

Question ID : 26433094743  
Status : Answered  
Chosen Option : 3

**Q.8** Select the most appropriate synonym of the given word.  
**Earn**

- Ans**
- 1. Receive
  - 2. Lose
  - 3. Accord
  - 4. Surrender

Question ID : 26433086427  
Status : Answered  
Chosen Option : 1

**Q.9** Select the most appropriate meaning of the given idiom.

**Fit as a fiddle**

- Ans**
- 1. In good health
  - 2. Limited in scope
  - 3. Emergency situation
  - 4. To be of perfect size

Question ID : 26433073708  
Status : Answered  
Chosen Option : 4

**Q.10** The sentence given below has one misspelt word. Spot the INCORRECTLY spelt word and select its correct spelling.

Some diseases are due to neurologikal disorders.

- Ans**
- 1. Newrologecal
  - 2. Neurological
  - 3. Neurologecal
  - 4. Newrological

Question ID : 26433073551  
Status : Answered  
Chosen Option : 2

**Q.11** Select the most appropriate option to fill in the blank.  
The private \_\_\_\_\_ has contributed immensely to the country's economy.

- Ans**
- 1. division
  - 2. segment
  - 3. section
  - 4. sector

Question ID : 26433084650  
Status : Answered  
Chosen Option : 4

Q.12 Select the most appropriate meaning of the given idiom.

Take it with a grain of salt

- Ans
- 1. To calculate things with utmost precision
  - 2. To misinterpret that the real situation is hidden
  - 3. To understand that something is likely to be untrue
  - 4. To imagine that someone is working against you

Question ID : 26433073492  
Status : Marked For Review  
Chosen Option : 2

Q.13 Fill in the blank by selecting the meaningful and correctly spelt word from the given options.

Nowadays, the police get a long \_\_\_\_\_ of drug peddlers every day.

- Ans
- 1. list
  - 2. lest
  - 3. leest
  - 4. least

Question ID : 26433072064  
Status : Answered  
Chosen Option : 1

Q.14 Select the most appropriate ANTONYM of the given word.  
Hope

- Ans
- 1. Despair
  - 2. Promise
  - 3. Craving
  - 4. Fantasy

Question ID : 26433086377  
Status : Answered  
Chosen Option : 1

Q.15 Select the most appropriate ANTONYM of the given word.

Generous

- Ans
- 1. Liberal
  - 2. Free
  - 3. Selfish
  - 4. Selfless

Question ID : 26433072270  
Status : Answered  
Chosen Option : 3

**Comprehension:**

In the following passage, some words have been deleted. Read the passage carefully and select the most appropriate option to fill in each blank.

An initiative has been (1) \_\_\_\_\_ in the educational reform sector in form of Social and Emotional Learning (SEL). This novel (2) \_\_\_\_\_ helps students to understand and manage their own emotions. The students (3) \_\_\_\_\_ and learn in a constructive manner. This concept (4) \_\_\_\_\_ momentum with the publication of the best seller by Daniel Goleman titled 'Emotional Intelligence: Why it can matter more than IQ'. It (5) \_\_\_\_\_ the enhancement of the given competencies: speaking and listening, cooperative skills and problem solving.

**SubQuestion No : 16**

**Q.16 Select the most appropriate option to fill in blank no. 1.**

- Ans**  1. discovered  
 2. started  
 3. reckoned  
 4. established

Question ID : 26433072244  
Status : **Answered**  
Chosen Option : 2

**Comprehension:**

In the following passage, some words have been deleted. Read the passage carefully and select the most appropriate option to fill in each blank.

An initiative has been (1) \_\_\_\_\_ in the educational reform sector in form of Social and Emotional Learning (SEL). This novel (2) \_\_\_\_\_ helps students to understand and manage their own emotions. The students (3) \_\_\_\_\_ and learn in a constructive manner. This concept (4) \_\_\_\_\_ momentum with the publication of the best seller by Daniel Goleman titled 'Emotional Intelligence: Why it can matter more than IQ'. It (5) \_\_\_\_\_ the enhancement of the given competencies: speaking and listening, cooperative skills and problem solving.

**SubQuestion No : 17**

**Q.17 Select the most appropriate option to fill in blank no. 2.**

- Ans**  1. intention  
 2. application  
 3. concept  
 4. experiment

Question ID : 26433072245  
Status : **Marked For Review**  
Chosen Option : 3



**Comprehension:**

In the following passage, some words have been deleted. Read the passage carefully and select the most appropriate option to fill in each blank.

An initiative has been (1) \_\_\_\_\_ in the educational reform sector in form of Social and Emotional Learning (SEL). This novel (2) \_\_\_\_\_ helps students to understand and manage their own emotions. The students (3) \_\_\_\_\_ and learn in a constructive manner. This concept (4) \_\_\_\_\_ momentum with the publication of the best seller by Daniel Goleman titled 'Emotional Intelligence: Why it can matter more than IQ'. It (5) \_\_\_\_\_ the enhancement of the given competencies: speaking and listening, cooperative skills and problem solving.

**SubQuestion No : 18**

**Q.18 Select the most appropriate option to fill in blank no. 3.**

- Ans**
- 1. act
  - 2. affect
  - 3. mingle
  - 4. interact

Question ID : 26433072246

Status : **Answered**

Chosen Option : 4

**Comprehension:**

In the following passage, some words have been deleted. Read the passage carefully and select the most appropriate option to fill in each blank.

An initiative has been (1) \_\_\_\_\_ in the educational reform sector in form of Social and Emotional Learning (SEL). This novel (2) \_\_\_\_\_ helps students to understand and manage their own emotions. The students (3) \_\_\_\_\_ and learn in a constructive manner. This concept (4) \_\_\_\_\_ momentum with the publication of the best seller by Daniel Goleman titled 'Emotional Intelligence: Why it can matter more than IQ'. It (5) \_\_\_\_\_ the enhancement of the given competencies: speaking and listening, cooperative skills and problem solving.

**SubQuestion No : 19**

**Q.19 Select the most appropriate option to fill in blank no. 4.**

- Ans**
- 1. gratified
  - 2. gained
  - 3. relieved
  - 4. profited

Question ID : 26433072247

Status : **Answered**

Chosen Option : 2

**Comprehension:**

In the following passage, some words have been deleted. Read the passage carefully and select the most appropriate option to fill in each blank.

An initiative has been (1) \_\_\_\_\_ in the educational reform sector in form of Social and Emotional Learning (SEL). This novel (2) \_\_\_\_\_ helps students to understand and manage their own emotions. The students (3) \_\_\_\_\_ and learn in a constructive manner. This concept (4) \_\_\_\_\_ momentum with the publication of the best seller by Daniel Goleman titled 'Emotional Intelligence: Why it can matter more than IQ'. It (5) \_\_\_\_\_ the enhancement of the given competencies: speaking and listening, cooperative skills and problem solving.

**SubQuestion No : 20**

**Q.20** Select the most appropriate option to fill in blank no. 5.

- Ans**  1. incorporates  
 2. influences  
 3. compares  
 4. merges

Question ID : 26433072248  
Status : Answered  
Chosen Option : 1

**Section : Part-D-Hindi**

**Q.1** समझ-बूझकर काम करना चाहिए।  
विकल्पों में से चुनकर बताइए कि उक्त वाक्य में रेखांकित पद किस प्रकार की क्रिया है?

- Ans**  1. संयुक्त क्रिया  
 2. पुनरुक्त क्रिया  
 3. प्रेरणार्थक क्रिया  
 4. नाम बोधक क्रिया

Question ID : 26433079228  
Status : Not Answered  
Chosen Option : --

**Q.2** निम्नलिखित वाक्य में रेखांकित खंड के स्थान पर प्रयुक्त होने वाले सबसे उपयुक्त विकल्प का चयन कीजिए-

विनय के पुस्तक पढ़ी।

- Ans**  1. ने  
 2. से  
 3. में  
 4. को

Question ID : 26433079662  
Status : Not Answered  
Chosen Option : --

**Q.3** 'यथासंभव' के लिए कौन सा वाक्यांश उपयुक्त होगा?

- Ans**  1. यथारूप  
 2. संभवतः  
 3. संभव हो  
 4. जहाँ तक हो सके

Question ID : 26433062692  
Status : Not Answered  
Chosen Option : --

Q.4 दिए गए शब्दों में से उचित शब्द से वाक्य पूर्ण करें --  
महानगरों में कई जगह कूड़े के \_\_\_\_\_ दिखाई देते हैं।

- Ans
- 1. अंबर
  - 2. अंबरसारी
  - 3. अंबर
  - 4. अंबारी

Question ID : 26433062910  
Status : Not Answered  
Chosen Option : --

Q.5 निम्नलिखित वाक्य के किस शब्द में अशुद्धि है?  
प्रत्येक छोटी-मोटी विशेषता को देखनि चाहिए।

- Ans
- 1. देखनि
  - 2. प्रत्येक
  - 3. विशेषता
  - 4. चाहिए।

Question ID : 26433066771  
Status : Not Answered  
Chosen Option : --

Q.6 निम्न में से किस वाक्य में 'कलह' के सही पर्यायवाची शब्द का प्रयोग हुआ है?

- Ans
- 1. सर्वत्र शांति छाई हुई है।
  - 2. निशा का सुजय से कोई रिश्ता नहीं है।
  - 3. रतन और मयंक के बीच कल विवाद हो गया।
  - 4. राधा ने उन दोनों की सुलह कराई।

Question ID : 26433067016  
Status : Not Answered  
Chosen Option : --

Q.7 निम्नलिखित में से किस वाक्य में तुलनात्मक विशेषण की उत्तमावस्था के अशुद्ध रूप का उपयोग हुआ है?

- Ans
- 1. हल्क सबसे ज्यादा बलवान है।
  - 2. सभी महासागरों में प्रशांत महासागर विशालतम है।
  - 3. उसका स्वभाव कोमलतरतम है।
  - 4. इन सब में से तुम सबसे सुन्दर हो।

Question ID : 26433062996  
Status : Not Answered  
Chosen Option : --

Q.8 निम्नलिखित वाक्य में रेखांकित शब्द का दिए गये विकल्पों में से कौन-सा शब्द पर्यायवाची नहीं है?  
सरदार पटेल की प्रतिमा 'लोहे' की बनी है।

- Ans
- 1. लाह
  - 2. लौह
  - 3. अयस
  - 4. आहन

Question ID : 26433085072  
Status : Not Answered  
Chosen Option : --

Q.9 निम्न वाक्य में रेखांकित शब्द-समूह के लिए सर्वाधिक उपयुक्त विकल्प चुनें।  
तुम्हारा अपराध क्षमा किए जाने योग्य है।

- Ans
- 1. गलत
  - 2. अक्षम्य
  - 3. क्षम्य
  - 4. अशोभनीय

Question ID : 26433079208  
Status : Not Answered  
Chosen Option : --

Q.10 वाक्य में रेखांकित अंश के लिए उचित मुहावरा दिए गए विकल्पों में से चुनिए-  
न माया मिली न राम, वह कहीं का नहीं रहा।

- Ans
- 1. चल बसना
  - 2. गूलर का फूल
  - 3. घड़ों पानी पड़ना
  - 4. घर का न घाट का

Question ID : 26433062305  
Status : Not Answered  
Chosen Option : --

Q.11 निम्नलिखित में से किस वाक्य में 'अग्रज' के सही विलोम शब्द का उपयोग हुआ है?

- Ans
- 1. मोहन मेरा अपना अनुज्य है।
  - 2. मोहन मेरा अनुज है।
  - 3. मोहन मेरा ही आनुज है।
  - 4. मोहन मेरा अनुज है।

Question ID : 26433091220  
Status : Not Answered  
Chosen Option : --

Q.12 निम्न में से शुद्ध वाक्य का चयन कीजिए।

- Ans
- 1. इस लड़की का चाल ठीक नहीं है।
  - 2. उन लोगों की मनोवृत्ति ठीक नहीं लगती।
  - 3. यहाँ के हवा – पानी बहुत खराब है।
  - 4. खुदा की कसम गजब हो गई।

Question ID : 26433063074  
Status : Not Answered  
Chosen Option : --

Q.13 निम्नलिखित विकल्पों में से 'जो उचित समय पर न हो' वाक्यांश के लिए एक सार्थक शब्द क्या होगा ?

- Ans
- 1. काल्पनिक
  - 2. सामयिक
  - 3. असामयिक
  - 4. कल्पनाजन्य

Question ID : 26433062536  
Status : Not Answered  
Chosen Option : --

Q.14 निम्नलिखित अर्थ को समझाने वाले मुहावरे का चयन विकल्पों में से कीजिए।  
इज्जत उतारना

- Ans  1. मिट्टी पलीद करना  
 2. मुँह की बात छीनना  
 3. मखमली जूते मारना  
 4. मुँह चाटना

Question ID : 26433070013  
Status : Not Answered  
Chosen Option : --

Q.15 निम्नलिखित वाक्यांश के लिए सार्थक शब्द का चयन विकल्पों में से कीजिए।  
जिस घटना को वचन से व्यक्त न किया जा सके

- Ans  1. अविस्मरणीय  
 2. अतुलनीय  
 3. अनिर्वचनीय  
 4. अनुकरणीय

Question ID : 26433069983  
Status : Not Answered  
Chosen Option : --

**Comprehension:**

निम्नलिखित गद्यांश में कुछ शब्दों को हटा दिया गया है। दिए गए विकल्पों की सहायता से रिक्त स्थानों की पूर्ति कीजिए। प्रत्येक संख्या के लिए सबसे उपयुक्त विकल्प का चयन कीजिए।  
मानव सभ्यता वनों में पलकर 1. \_\_\_\_\_ हुई है। आदिमानव का जन्म वहीं हुआ तथा वहाँ के वृक्षों के फल  
2. \_\_\_\_\_ ही वह बड़ा हुआ। भारतीय 3. \_\_\_\_\_ के अधिकांश महान ग्रन्थ ऋषि मुनियों द्वारा  
4. \_\_\_\_\_ में ही रचे गए। आज की स्थिति यह है कि मनुष्य पेड़-पौधों को नष्ट करने के लिए  
5. \_\_\_\_\_ हो गया है।

SubQuestion No : 16

Q.16 रिक्त स्थान 1 की पूर्ति के लिए सबसे उपयुक्त विकल्प का चयन कीजिए।

- Ans  1. अमूल्य  
 2. विकसित  
 3. बड़ा  
 4. खत्म

Question ID : 264330110999  
Status : Not Answered  
Chosen Option : --

**Comprehension:**

निम्नलिखित गद्यांश में कुछ शब्दों को हटा दिया गया है। दिए गए विकल्पों की सहायता से रिक्त स्थानों की पूर्ति कीजिए। प्रत्येक संख्या के लिए सबसे उपयुक्त विकल्प का चयन कीजिए।  
मानव सभ्यता वनों में पलकर 1. \_\_\_\_\_ हुई है। आदिमानव का जन्म वहीं हुआ तथा वहाँ के वृक्षों के फल  
2. \_\_\_\_\_ ही वह बड़ा हुआ। भारतीय 3. \_\_\_\_\_ के अधिकांश महान ग्रन्थ ऋषि मुनियों द्वारा  
4. \_\_\_\_\_ में ही रचे गए। आज की स्थिति यह है कि मनुष्य पेड़-पौधों को नष्ट करने के लिए  
5. \_\_\_\_\_ हो गया है।

SubQuestion No : 17

Q.17 रिक्त स्थान 2 की पूर्ति के लिए सबसे उपयुक्त विकल्प का चयन कीजिए।

- Ans  1. खाकर  
 2. नुकसानकर  
 3. देखकर  
 4. तोड़कर

Question ID : 264330111000  
Status : Not Answered  
Chosen Option : --

**Comprehension:**

निम्नलिखित गद्यांश में कुछ शब्दों को हटा दिया गया है। दिए गए विकल्पों की सहायता से रिक्त स्थानों की पूर्ति कीजिए। प्रत्येक संख्या के लिए सबसे उपयुक्त विकल्प का चयन कीजिए।  
मानव सभ्यता वनों में पलकर 1. \_\_\_\_\_ हुई है। आदिमानव का जन्म वहीं हुआ तथा वहां के वृक्षों के फल  
2. \_\_\_\_\_ ही वह बड़ा हुआ। भारतीय 3. \_\_\_\_\_ के अधिकांश महान ग्रन्थ ऋषि मुनियों द्वारा  
4. \_\_\_\_\_ में ही रचे गए। आज की स्थिति यह है कि मनुष्य पेड़-पौधों को नष्ट करने के लिए  
5. \_\_\_\_\_ हो गया है।

**SubQuestion No : 18****Q.18 रिक्त स्थान 3 की पूर्ति के लिए सबसे उपयुक्त विकल्प का चयन कीजिए।**

- Ans  1. देख-रेख  
 2. संरक्षण  
 3. संस्कृति  
 4. परिवार

Question ID : 264330111001  
Status : Not Answered  
Chosen Option : --

**Comprehension:**

निम्नलिखित गद्यांश में कुछ शब्दों को हटा दिया गया है। दिए गए विकल्पों की सहायता से रिक्त स्थानों की पूर्ति कीजिए। प्रत्येक संख्या के लिए सबसे उपयुक्त विकल्प का चयन कीजिए।  
मानव सभ्यता वनों में पलकर 1. \_\_\_\_\_ हुई है। आदिमानव का जन्म वहीं हुआ तथा वहां के वृक्षों के फल  
2. \_\_\_\_\_ ही वह बड़ा हुआ। भारतीय 3. \_\_\_\_\_ के अधिकांश महान ग्रन्थ ऋषि मुनियों द्वारा  
4. \_\_\_\_\_ में ही रचे गए। आज की स्थिति यह है कि मनुष्य पेड़-पौधों को नष्ट करने के लिए  
5. \_\_\_\_\_ हो गया है।

**SubQuestion No : 19****Q.19 रिक्त स्थान 4 की पूर्ति के लिए सबसे उपयुक्त विकल्प का चयन कीजिए।**

- Ans  1. आवश्यक  
 2. तपोवन  
 3. महल  
 4. वातावरण

Question ID : 264330111002  
Status : Not Answered  
Chosen Option : --

**Comprehension:**

निम्नलिखित गद्यांश में कुछ शब्दों को हटा दिया गया है। दिए गए विकल्पों की सहायता से रिक्त स्थानों की पूर्ति कीजिए। प्रत्येक संख्या के लिए सबसे उपयुक्त विकल्प का चयन कीजिए।  
मानव सभ्यता वनों में पलकर 1. \_\_\_\_\_ हुई है। आदिमानव का जन्म वहीं हुआ तथा वहां के वृक्षों के फल  
2. \_\_\_\_\_ ही वह बड़ा हुआ। भारतीय 3. \_\_\_\_\_ के अधिकांश महान ग्रन्थ ऋषि मुनियों द्वारा  
4. \_\_\_\_\_ में ही रचे गए। आज की स्थिति यह है कि मनुष्य पेड़-पौधों को नष्ट करने के लिए  
5. \_\_\_\_\_ हो गया है।

**SubQuestion No : 20****Q.20 रिक्त स्थान 5 की पूर्ति के लिए सबसे उपयुक्त विकल्प का चयन कीजिए।**

- Ans  1. संभव  
 2. तत्पर  
 3. सहज  
 4. विचरण

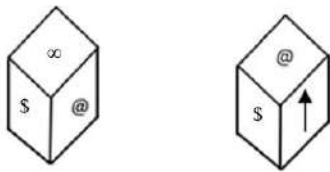
Question ID : 264330111003  
Status : Not Answered  
Chosen Option : --

# Constable GD in CAPFs SSF Rifleman GD in Assam Rifles and Sepoy in NCB Examination 2022

Roll Number	KD Job Updates
Candidate Name	KD Job Updates
Venue Name	iON Digital Zone iDZ Austinpatti
Exam Date	12/01/2023
Exam Time	5:15 PM - 6:15 PM
Subject	Constable GD Examination 2022

## Section : Part-A-General Intelligence and Reasoning

Q.1 Two different positions of the same dice are shown having symbols- @, Δ, □, \$, ∞ and ↑. Find the symbol on the face opposite the face showing '∞'.



- Ans
- 1. @
  - 2. Δ
  - 3. □
  - 4. ↑

Question ID : 26433085515  
Status : Answered  
Chosen Option : 1

Q.2 Six friends Amit, Bunty, Vaibhav, Harshit, Pulkit and Gagan are sitting around a circular table facing towards the centre. Bunty is the immediate neighbour of Harshit and Vaibhav. Amit is the immediate neighbour of Pulkit and Vaibhav. Who is the immediate neighbour of Amit and Gagan?

- Ans
- 1. Pulkit
  - 2. Bunty
  - 3. Vaibhav
  - 4. Harshit

Question ID : 26433068078  
Status : Answered  
Chosen Option : 1

Q.3 Which two signs should be interchanged to make the below equation mathematically correct?

$$24 - 8 + 12 \div 48 \times 36 = 23$$

- Ans
- 1. + and ÷
  - 2. - and +
  - 3. × and +
  - 4. - and ×

Question ID : 264330114186  
 Status : Answered  
 Chosen Option : 2

Q.4 Which figure should replace the question mark (?) if the series were to be continued?

□ T Z △	P A T A	△ Z T □	A P Z A	□ △ Z T	A Z △ □	T P □ ?
------------------	------------------	------------------	------------------	------------------	------------------	------------------

Ans

- 1. 

□	P
△	Z
T	A
- 2. 

P	A
△	Z
□	T
- 3. 

T	□
△	Z
A	P
- 4. 

□	P
A	Z
T	△

Question ID : 26433076625  
 Status : Answered  
 Chosen Option : 2



**Q.5** In a certain language, EARLY is coded as HDUOB, GAMES is coded as JDPHV. How will INDEX be coded in the same language?

- Ans
- 1. XEDNI
  - 2. LQGHA
  - 3. DNIEX
  - 4. KPFGZ

Question ID : 26433074593

Status : Answered

Chosen Option : 2

**Q.6** In this question, three statements are given, followed by two conclusions numbered I and II. Assuming the statements to be true, even if they seem to be at variance with commonly known facts, decide which of the conclusions logically follows/follow from the statements.

Statements:

All doors are walls.

All walls are rooms.

All rooms are flats.

Conclusions:

I. Some flats are doors.

II. All walls are flats.

- Ans
- 1. Only conclusion I follows.
  - 2. Neither conclusion I nor II follows.
  - 3. Both conclusions I and II follow.
  - 4. Only conclusion II follows.

Question ID : 26433070382

Status : Answered

Chosen Option : 4

**Q.7** Select the set in which the numbers are related in the same way as are the numbers of the following set.

(NOTE : Operations should be performed on the whole numbers, without breaking down the numbers into its constituent digits. E.g. 13 – Operations on 13 such as adding /subtracting/multiplying etc. to 13 can be performed. Breaking down 13 into 1 and 3 and then performing mathematical operations on 1 and 3 is NOT allowed)

(360, 65, 25)

(216, 44, 20)

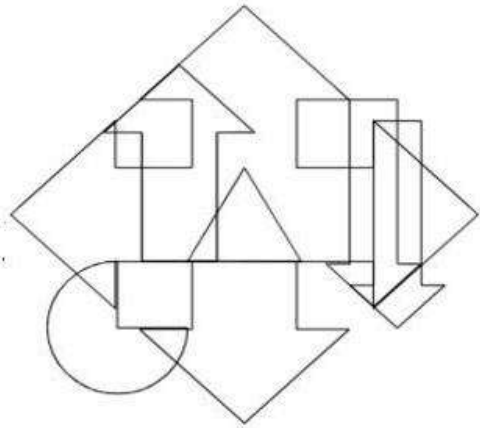
- Ans
- 1. (179, 66, 30)
  - 2. (80, 19, 9)
  - 3. (190, 35, 17)
  - 4. (198, 35, 13)

Question ID : 26433076476

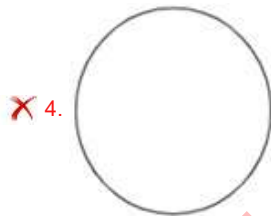
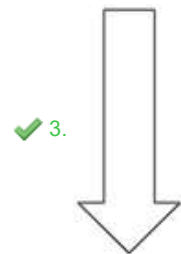
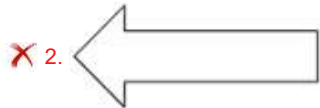

Status : Not Attempted and Marked For Review

Chosen Option : --

Q.8 Select the option figure which is embedded in the given figure. (Rotation is NOT allowed)



Ans



KD Job Updates

Question ID : 26433085755

Status : Answered

Chosen Option : 3

Q.9 In a certain code language, 'live life happily' is coded as '447', 'everyone is here' is coded as '824' and 'be grateful' is coded as '28'. How will 'count your blessings' be coded in that language?

Ans ✗ 1. 658

✗ 2. 856

✓ 3. 549

✗ 4. 459

Question ID : 26433067780

Status : Marked For Review

Chosen Option : 1

Q.10 Which of the following numbers will replace the question mark (?) in the given series?  
4, 7, 12, 19, 28, 39, 52, 67, ?

- Ans
- 1. 83
  - 2. 84
  - 3. 82
  - 4. 81

Question ID : 26433069052  
Status : Answered  
Chosen Option : 2

Q.11 Select the letter-cluster from among the given options that can replace the question mark (?) in the following series.  
WBL, DIS, KPZ, RWG, ?

- Ans
- 1. YEM
  - 2. ZDN
  - 3. XDN
  - 4. YDN

Question ID : 26433079033  
Status : Answered  
Chosen Option : 4

Q.12 Which two signs should be interchanged to make the below equation mathematically correct?  
 $25 + 200 \div 8 \times 16 - 48 = 77$

- Ans
- 1.  $\div$  and  $\times$
  - 2.  $\div$  and  $-$
  - 3.  $-$  and  $+$
  - 4.  $\times$  and  $-$

Question ID : 264330117552  
Status : Not Attempted and Marked For Review  
Chosen Option : --

Q.13 Which of the following numbers will replace the question mark (?) in the given series?  
4, 24, 30, 180, 186, ?

- Ans
- 1. 192
  - 2. 1118
  - 3. 1110
  - 4. 1116

Question ID : 26433087034  
Status : Not Answered  
Chosen Option : --

Q.14 Select the option that is related to the third word in the same way as the second word is related to the first word. (The words must be considered as meaningful English words and must not be related to each other based on the number of letters/number of consonants/vowels in the word)  
Colour : Red :: Vehicle : ?

- Ans
- 1. Truck
  - 2. Road
  - 3. Petrol
  - 4. Tyre

Question ID : 26433082936  
Status : Answered  
Chosen Option : 4

Q.15 'A ^ P' means 'A is the husband of P'.  
'A % P' means 'A is the father of P'.  
'A = P' means 'A is the sister of P'.  
'A & P' means 'A is the daughter of P'.  
If F & G = H ^ J, then which of the following is correct?

- Ans
- 1. H and F are siblings.
  - 2. F is the daughter of J.
  - 3. G is the mother of J.
  - 4. J is the wife of G's brother.

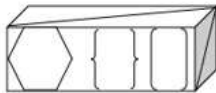
Question ID : 26433086995  
Status : Answered  
Chosen Option : 4

Q.16 V, W, X, Y, Z, A, B and C were sitting around a square table facing the centre. Some of these were sitting at corners and some were sitting at exact centre of the sides. C was to the immediate right of W. B was third to the left of Z. A was the immediate neighbour of X and C. Z, not at any corner, was the immediate neighbour of W and Y. Who among the following was sitting third to the right of A?

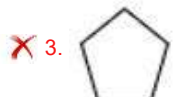
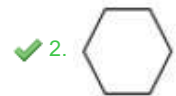
- Ans
- 1. B
  - 2. Y
  - 3. V
  - 4. Z

Question ID : 26433087012  
Status : Not Answered  
Chosen Option : --

Q.17 Select the option that is embedded in the given figure (rotation is NOT allowed).



Ans



Question ID : 26433082895  
Status : Answered  
Chosen Option : 2

Q.18 Select the option that is related to the fifth letter-cluster in the same way as the second letter-cluster is related to the first letter-cluster and the fourth letter-cluster is related to the third letter-cluster.

FALLEN : TJPOCG :: DANGER : XJKQCE :: CABLES : ?

Ans  1. YJPEBD

2. YJPECD

3. DCEPJY

4. ZJPECD

Question ID : 26433057250  
Status : Answered  
Chosen Option : 2

Q.19 Which of the following letter-clusters will replace the question mark (?) and complete the following letter-cluster series?

UH, BD, IA, PY, ?

Ans  1. VX

2. WW

3. WY

4. WX

Question ID : 26433067288  
Status : Answered  
Chosen Option : 4

Q.20 Which option represents the correct order of the given words as they would appear in the English dictionary?

- 1 Pillow
- 2 Pile
- 3 Pint
- 4 Picked
- 5 Pickle

- Ans  1. 5,4,2,1,3
2. 4,5,2,1,3
3. 2,3,4,1,5
4. 2,1,3,5,4

Question ID : 26433069274  
Status : Answered  
Chosen Option : 2

Section : Part-B-General Knowledge and General awareness

Q.1 Which among the following political leaders succeeded Raghav Chadha to become Member of Legislative Assembly from Rajinder Nagar, Delhi in June 2022?

- Ans  1. Sanjeev Jha
2. Manoj Tiwari
3. Durgesh Pathak
4. Adarsh Shastri

Question ID : 264330114905  
Status : Not Answered  
Chosen Option : --

Q.2 Which Part of the Constitution of India contains within it the powers and functions of the Union Public Service Commission?

- Ans  1. Part XVII
2. Part XV
3. Part XVI
4. Part XIV

Question ID : 26433074900  
Status : Not Answered  
Chosen Option : --

Q.3 RUSA , is the central government's contribution to further the promise held by the rich expanse of India's state universities. RUSA stands for:

- Ans  1. Rajiv Gandhi Uchcharat Shiksha Abhiyan
2. Rashtriya Uchcharat Seekh Abhiyan
3. Rashtriya Unchi Shiksha Abhiyan
4. Rashtriya Uchcharat Shiksha Abhiyan

Question ID : 264330116162  
Status : Not Answered  
Chosen Option : --

Q.4 The famous Losoong festival is celebrated in which of the following states?

- Ans
- 1. Assam
  - 2. Sikkim
  - 3. Manipur
  - 4. Rajasthan

Question ID : 264330115091  
Status : Not Answered  
Chosen Option : --

Q.5 How many sports were there in the Asian Games 2018?

- Ans
- 1. 41
  - 2. 47
  - 3. 55
  - 4. 36

Question ID : 264330115957  
Status : Not Answered  
Chosen Option : --

Q.6 During the Chola period, *muvendavelan* and *araiyar* were titles of \_\_\_\_\_.

- Ans
- 1. sons of king
  - 2. commander of army
  - 3. rich landowners
  - 4. ministers of king

Question ID : 26433089853  
Status : Answered  
Chosen Option : 1

Q.7 Guru Pankaj Charan Das is a famous proponent of which Indian classical Dance?

- Ans
- 1. Manipuri
  - 2. Odissi
  - 3. Mohiniyattam
  - 4. Kathak

Question ID : 26433066532  
Status : Answered  
Chosen Option : 2

**Q.8** In India, it is the only industry in the country, which is self-reliant and complete in the value chain i.e., from raw material to the highest value added products. Which industry is being spoken about here?

- Ans**
- 1. Small Scale Industries
  - 2. Iron and Steel Industry
  - 3. Private Sector Industries
  - 4. Textile Industry

Question ID : **264330115586**  
Status : **Not Answered**  
Chosen Option : --

**Q.9** Who among the following was the founder of the 'Khudai Khidmatgars' non-violent movement?

- Ans**
- 1. Syed Ahmad Khan
  - 2. Abul Kalam Azad
  - 3. Khan Abdul Ghaffar Khan
  - 4. Mohammad Ali Jinnah

Question ID : **26433090590**  
Status : **Not Answered**  
Chosen Option : --

**Q.10** Cyclostomes are jawless \_\_\_\_\_.

- Ans**
- 1. vertebrates
  - 2. protochordates
  - 3. mollusca
  - 4. arthropoda

Question ID : **264330115187**  
Status : **Not Answered**  
Chosen Option : --

**Q.11** The first complete census of an Indian city was conducted in 1830 by \_\_\_\_\_.

- Ans**
- 1. James Rennell
  - 2. Henry Walter
  - 3. John Graunt
  - 4. Eratosthenes

Question ID : **264330116025**  
Status : **Not Answered**  
Chosen Option : --



Q.12 National development council (NDC) was set up in \_\_\_\_\_ in India.

- Ans  1. 1949  
 2. 1960  
 3. 1952  
 4. 1947

Question ID : 264330115371  
Status : Not Answered  
Chosen Option : --

Q.13 In November 2021, which of the following dancer won a Padma Shri for the contribution in Arts?

- Ans  1. Sumitra Mahajan  
 2. Manjamma Jogati  
 3. Chutni Devi  
 4. Shanti Devi

Question ID : 264330115816  
Status : Not Answered  
Chosen Option : --

Q.14 Whose tenure has been extended by one year as the Chief of Research and Analysis Wing (R&AW) in June 2022?

- Ans  1. Samant Goel  
 2. Rajinder Khanna  
 3. Arvinda Kumar  
 4. Rameshwar Nath Kao

Question ID : 264330115042  
Status : Answered  
Chosen Option : 1

Q.15 Which of the following is correct regarding Personal Disposable Income?

- Ans  1. Personal Disposable Income  $\equiv$  Personal Income + Personal tax payments – Non-tax payments  
 2. Personal Disposable Income  $\equiv$  Personal Income – Personal tax payments – Non-tax payments  
 3. Personal Disposable Income  $\equiv$  Personal Income – Personal tax payments + Non-tax payments  
 4. Personal Disposable Income  $\equiv$  Personal Income + Personal tax payments + Non-tax payments

Question ID : 264330115339  
Status : Not Answered  
Chosen Option : --

Q.16 Which among the following elements has the least atomic radius?

- Ans
- 1. Li
  - 2. Be
  - 3. O
  - 4. B

Question ID : 264330115153  
Status : Not Answered  
Chosen Option : --

Q.17 In which of the following International Olympic Committee's session, Tomas Bach's Olympic Agenda 2020+5 was discussed?

- Ans
- 1. 137<sup>th</sup> Session held virtually
  - 2. 138<sup>th</sup> Session held in Tokyo
  - 3. 135<sup>th</sup> Session held in Lausanne
  - 4. 136<sup>th</sup> Session held virtually

Question ID : 26433086724  
Status : Not Answered  
Chosen Option : --

Q.18 Which water body surrounds India in the west?

- Ans
- 1. Arabian Sea
  - 2. Pacific Ocean
  - 3. Bay of Bengal
  - 4. Indian Ocean

Question ID : 264330116010  
Status : Not Answered  
Chosen Option : --

Q.19 The objective of the first five year plan was to \_\_\_\_\_.

- Ans
- 1. promote more education
  - 2. initiate a process of development.
  - 3. develop agriculture
  - 4. increase the GDP of India.

Question ID : 264330116115  
Status : Not Answered  
Chosen Option : --

Q.20 In the Indian constitution, Right to equality has \_\_\_\_\_ articles in it.

Ans  1. 5

2. 4

3. 3

4. 2

Question ID : 264330115640

Status : Not Answered

Chosen Option : --

Section : Part-C-Elementary Mathematics

Q.1 A train runs at a speed of 90 km/h in the first 10 minutes and 60 km/h in next 25 minutes and 15 km/h in last 4 minutes. What is the average speed of the train?

Ans  1.  $51 \frac{1}{11}$  km/h

2.  $61 \frac{11}{13}$  km/h

3.  $63 \frac{1}{13}$  km/h

4.  $65 \frac{5}{13}$  km/h

Question ID : 26433091504

Status : Not Answered

Chosen Option : --

Q.2 If 125 identical small spheres are made from a solid sphere of diameter 15 cm, then what is the surface area of each of the small sphere?

Ans  1.  $4 \pi \text{ cm}^2$

2.  $36 \pi \text{ cm}^2$

3.  $12 \pi \text{ cm}^2$

4.  $9 \pi \text{ cm}^2$

Question ID : 26433076248

Status : Not Answered

Chosen Option : --

Q.3 A salesman buys 15 articles for Rs.10 and sells 10 articles for Rs.15. Determine the percentage profit earned by the salesman.

Ans  1. 125%

2. 100%

3. 225%

4. 150%

Question ID : 26433071308

Status : Answered

Chosen Option : 4

Q.4 Sohan and Rohan together can do a piece of work in 18 days. If Sohan alone can do the same work in 27 days, then how many days Rohan alone takes to complete the same work?

- Ans
- 1. 72
  - 2. 66
  - 3. 54
  - 4. 48

Question ID : 26433075702  
Status : Answered  
Chosen Option : 3

Q.5 If  $A : B = 5 : 8$  and  $B : C = 4 : 7$ , then find the value of  $A : B : C$ .

- Ans
- 1. 7 : 8 : 12
  - 2. 4 : 9 : 15
  - 3. 5 : 8 : 14
  - 4. 5 : 8 : 10

Question ID : 26433082718  
Status : Answered  
Chosen Option : 3

Q.6 The average of the first four prime numbers that are odd is:

- Ans
- 1. 4.6
  - 2. 4
  - 3. 6
  - 4. 6.5

Question ID : 26433080098  
Status : Not Attempted and Marked For Review  
Chosen Option : --

Q.7 The value of the following expression is:

$$197 - \left[ \frac{1}{9} \{42 + (56 - 8 + 9)\} + 108 \right]$$

- Ans
- 1. 78
  - 2. 23
  - 3. 74
  - 4. 80

Question ID : 26433076321  
Status : Answered  
Chosen Option : 3

Q.8 A, B, and C can do a piece of work in 8, 4, and 16 days respectively. How many days will A take to complete the entire work if A is assisted by B and C both on every second day?

- Ans
- 1. 26/7 days
  - 2. 54/11 days
  - 3. 7/8 days
  - 4. 3/4 days

Question ID : 264330116846  
Status : Not Answered  
Chosen Option : --

Q.9 Which of the following numbers is NOT divisible by 16?

- Ans
- 1. 16826
  - 2. 17776
  - 3. 5168
  - 4. 18016

Question ID : 26433091891  
Status : Answered  
Chosen Option : 1

Q.10 In an election between two candidates, One candidate got 48% of the total valid votes. 18% of the votes were invalid. If the total number of votes was 17500, then what was the number of valid votes the other candidate got?

- Ans
- 1. 7512
  - 2. 14350
  - 3. 7462
  - 4. 8750

Question ID : 26433082595  
Status : Answered  
Chosen Option : 2

Q.11 A loan of ₹1,50,000 is availed with compound interest rate of 10% per annum for two years compounded annually. It is to be paid in equal yearly instalments; and the instalment is to be paid at the end of each year. The value of the equal yearly instalment is : (Rounded off to two places of decimal)

- Ans
- 1. ₹86,428.57
  - 2. ₹84,400.44
  - 3. ₹80,000.24
  - 4. ₹82,208.67

Question ID : 26433081722  
Status : Not Answered  
Chosen Option : --

Q.12 A trader gains 12% after allowing a discount of 20% on the marked price of an article. Find his profit percentage if the article is sold at marked price allowing no discount.

- Ans  1. 40%
2. 35%
3. 38%
4. 42%

Question ID : 26433066311  
Status : Not Answered  
Chosen Option : --

Q.13 A triangle has two equal sides, and the third side is 1.5 times any of these sides. If the perimeter of the triangle is 14 units, then the area of the triangle is \_\_\_\_\_ square units.

- Ans  1.  $3\sqrt{3}$
2.  $3\sqrt{7}$
3.  $4\sqrt{7}$
4.  $\frac{3}{2}\sqrt{7}$

Question ID : 26433071366  
Status : Not Answered  
Chosen Option : --

Q.14 In an election between three candidates A, B and C, 80% of the registered voters voted and all the votes were valid. Candidate B got 50% less votes than A, and the difference between the number of votes secured by B and C was 10000. If B got 10% more votes than C, then the number of voters registered on the voting list is:

- Ans  1. 175000
2. 430000
3. 220000
4. 537500

Question ID : 26433079922  
Status : Not Answered  
Chosen Option : --

Q.15 A man purchased two items at the same price and sold one at a profit of 10% and the other at a loss of 5%. If the difference between the two selling prices is ₹60, then what is the sum of cost price of the two items?

- Ans  1. ₹900
2. ₹700
3. ₹600
4. ₹800

Question ID : 26433074279  
Status : Answered  
Chosen Option : 4

Q.16 Two trains having lengths 550 m and 650 m are running parallel to each other in opposite directions at speeds of 68 km/h and 40 km/h, respectively. In how much time (in seconds) they will cross each other?

- Ans  1. 40  
 2. 30  
 3. 45  
 4. 35

Question ID : 26433075563  
Status : Not Answered  
Chosen Option : --

Q.17 Without stoppages a train travels a certain distance with an average speed of 75 km/h and with stoppages it covers the same distance with an average speed of 65 km/h. How many minutes per hour does the train stop?

- Ans  1. 10 min  
 2. 7 min  
 3. 9 min  
 4. 8 min

Question ID : 26433066316  
Status : Answered  
Chosen Option : 4

Q.18 When the same number is subtracted from each of 7, 9, 11 and 15, the resulting numbers are in proportion. The number subtracted is:

- Ans  1. 4  
 2. 5  
 3. 2  
 4. 3

Question ID : 26433082390  
Status : Answered  
Chosen Option : 4

Q.19 Lara deposited Rs.8,000 in a bank, which pays her compound interest at the rate of 10% per annum compounded half-yearly. What is the amount she will receive after 18 months?

- Ans  1. Rs.9,162  
 2. Rs.9,616  
 3. Rs.9,621  
 4. Rs.9,261

Question ID : 26433065092  
Status : Not Answered  
Chosen Option : --

Q.20 X was offering two successive discounts of 12 percent and 8 percent on an item while Y was offering flat 20 percent discount on the same item. What is the difference between overall discount given by X and Y?

- Ans  1. 0.96 percent  
 2. 0.90 percent  
 3. 0.92 percent  
 4. 0.94 percent

Question ID : 264330116731  
Status : Not Answered  
Chosen Option : --

Section : Part-D-English

Q.1 Select the most appropriate option that can substitute the underlined segment in the given sentence.

How she managed of escaping from the situation was inexplicable.

- Ans  1. managed to escape of  
 2. managed to escape on  
 3. managed to escape from  
 4. managing of escape

Question ID : 26433091963  
Status : Answered  
Chosen Option : 3

Q.2 Select the most appropriate meaning of the given idiom.

Wild goose chase

- Ans  1. To do something pointless  
 2. To hunt wild animals  
 3. Going on world tour  
 4. Competing fiercely

Question ID : 26433072359  
Status : Not Answered  
Chosen Option : --

Q.3 Select the most appropriate option to fill in the blank.

As he opened the window the sun \_\_\_\_\_ directly fell on his face.

- Ans  1. rays  
 2. raze  
 3. race  
 4. raise

Question ID : 26433084715  
Status : Answered  
Chosen Option : 1



Q.4 Select the most appropriate synonym of the given word.

Auspicious

- Ans
- 1. Antique
  - 2. Fortunate
  - 3. Illogical
  - 4. Despairing

Question ID : 26433073433  
Status : Not Answered  
Chosen Option : --

Q.5 Select the most appropriate option that can substitute the underlined segment in the given sentence.

Mr. Advani was happy to push the boat out for his daughter's wedding.

- Ans
- 1. spend a lot of money
  - 2. spend less money
  - 3. avoid risk
  - 4. take it easy

Question ID : 26433071894  
Status : Not Answered  
Chosen Option : --

Q.6 Select the most appropriate option to fill in the blank.

They enjoyed \_\_\_\_\_ the sun rising from the hills.

- Ans
- 1. in seeing
  - 2. to visualise
  - 3. watching
  - 4. blinking at

Question ID : 26433073406  
Status : Answered  
Chosen Option : 3

Q.7 Select the most appropriate synonym of the capitalised word in the given sentence.

Isabel listened with extreme respect to this **ADMONITION**.

- Ans
- 1. Insult
  - 2. Prayer
  - 3. Council
  - 4. Counsel

Question ID : 26433088208  
Status : Not Answered  
Chosen Option : --

Q.8 Select the correct pair of words for the blanks in the given sentence.

I will \_\_\_\_\_ a new purse from the shop on the \_\_\_\_\_ pass road.

- Ans
- 1. by; bye
  - 2. bye; bye
  - 3. buy; by
  - 4. bye; buy

Question ID : 26433060544  
Status : Answered  
Chosen Option : 3

Q.9 Fill in the blank in the following sentence using the ANTONYM of the underlined word.  
We believe that this incident has been exaggerated so \_\_\_\_\_ it.

- Ans
- 1. ignore
  - 2. condemn
  - 3. underwrite
  - 4. understate

Question ID : 26433088827  
Status : Answered  
Chosen Option : 1

Q.10 The following sentence has been split into four segments. Identify the segment that contains a grammatical error.

I can't say for sure/ what make him/ think of such an/ outrageously absurd idea.

- Ans
- 1. I can't say for sure
  - 2. what make him
  - 3. think of such an
  - 4. outrageously absurd idea

Question ID : 264330114511  
Status : Answered  
Chosen Option : 1

Q.11 Select the most appropriate ANTONYM of the given word.

Curtail

- Ans
- 1. Seize
  - 2. Amplify
  - 3. Restrict
  - 4. Deviate

Question ID : 26433071973  
Status : Not Answered  
Chosen Option : --

**Q.12** Select the most appropriate option that can substitute the underlined segment in the given sentence.

Over 80% of India's transportation fuel are exchanged.

- Ans
- 1. is endangered
  - 2. are vanished
  - 3. is imported
  - 4. have vanished

Question ID : 26433089799  
Status : Answered  
Chosen Option : 1

**Q.13** Identify the correctly spelt sentence.

- Ans
- 1. I saw the catalogue of D Décor in Capital Mall yesterday.
  - 2. I saw the cattalogue of D Décor in Capital Mall yesterday.
  - 3. I saw the catologue of D Décor in Capital Mall yesterday.
  - 4. I saw the catalogoue of D Décor in Capital Mall yesterday.

Question ID : 26433072832  
Status : Answered  
Chosen Option : 1

**Q.14** The sentence given below has one misspelt word. Spot the INCORRECTLY spelt word and select its correct spelling.

The aproximate value of my property is ₹2 lakh.

- Ans
- 1. Approximate
  - 2. Aproxemate
  - 3. Approximate
  - 4. Appraximate

Question ID : 26433073543  
Status : Answered  
Chosen Option : 1

**Q.15** Select the most appropriate ANTONYM of the given word.  
Outgoing

- Ans
- 1. Extravagant
  - 2. Eccentric
  - 3. Introverted
  - 4. Rational

Question ID : 26433066083  
Status : Not Answered  
Chosen Option : --

**Comprehension:**

In the following passage, some words have been deleted. Read the passage carefully and select the most appropriate option to fill in each blank.

Miss Caroline was no more (1)\_\_\_\_\_ twenty-one. She had bright auburn hair, pink (2)\_\_\_\_\_, and wore crimson finger-nail polish. She also (3)\_\_\_\_\_ high-heeled pumps and a red-and-white (4)\_\_\_\_\_ dress. She looked and smelled (5)\_\_\_\_\_ a peppermint drop.

**SubQuestion No : 16**

**Q.16 Select the most appropriate option to fill in blank number 1.**

Ans  1. then

2. but

3. than

4. the

Question ID : 26433061540

Status : Answered

Chosen Option : 3

**Comprehension:**

In the following passage, some words have been deleted. Read the passage carefully and select the most appropriate option to fill in each blank.

Miss Caroline was no more (1)\_\_\_\_\_ twenty-one. She had bright auburn hair, pink (2)\_\_\_\_\_, and wore crimson finger-nail polish. She also (3)\_\_\_\_\_ high-heeled pumps and a red-and-white (4)\_\_\_\_\_ dress. She looked and smelled (5)\_\_\_\_\_ a peppermint drop.

**SubQuestion No : 17**

**Q.17 Select the most appropriate option to fill in blank number 2.**

Ans  1. ears

2. eyes

3. cheeks

4. eyebrows

Question ID : 26433061541

Status : Answered

Chosen Option : 2

**Comprehension:**

In the following passage, some words have been deleted. Read the passage carefully and select the most appropriate option to fill in each blank.

Miss Caroline was no more (1)\_\_\_\_\_ twenty-one. She had bright auburn hair, pink (2)\_\_\_\_\_, and wore crimson finger-nail polish. She also (3)\_\_\_\_\_ high-heeled pumps and a red-and-white (4)\_\_\_\_\_ dress. She looked and smelled (5)\_\_\_\_\_ a peppermint drop.

**SubQuestion No : 18**

**Q.18 Select the most appropriate option to fill in blank number 3.**

- Ans**    ✓ 1. wore  
          ✗ 2. worn  
          ✗ 3. wearing  
          ✗ 4. put

Question ID : 26433061542  
Status : Answered  
Chosen Option : 3

**Comprehension:**

In the following passage, some words have been deleted. Read the passage carefully and select the most appropriate option to fill in each blank.

Miss Caroline was no more (1)\_\_\_\_\_ twenty-one. She had bright auburn hair, pink (2)\_\_\_\_\_, and wore crimson finger-nail polish. She also (3)\_\_\_\_\_ high-heeled pumps and a red-and-white (4)\_\_\_\_\_ dress. She looked and smelled (5)\_\_\_\_\_ a peppermint drop.

**SubQuestion No : 19**

**Q.19 Select the most appropriate option to fill in blank number 4.**

- Ans**    ✓ 1. striped  
          ✗ 2. stripped  
          ✗ 3. stepped  
          ✗ 4. stapled

Question ID : 26433061543  
Status : Answered  
Chosen Option : 2

**Comprehension:**

In the following passage, some words have been deleted. Read the passage carefully and select the most appropriate option to fill in each blank.

Miss Caroline was no more (1)\_\_\_\_\_ twenty-one. She had bright auburn hair, pink (2)\_\_\_\_\_, and wore crimson finger-nail polish. She also (3)\_\_\_\_\_ high-heeled pumps and a red-and-white (4)\_\_\_\_\_ dress. She looked and smelled (5)\_\_\_\_\_ a peppermint drop.

SubQuestion No : 20

Q.20 Select the most appropriate option to fill in blank number 5.

- Ans
- 1. liked
  - 2. as
  - 3. like
  - 4. as if

Question ID : 26433061544  
Status : Answered  
Chosen Option : 3

Section : Part-D-Hindi

Q.1 निम्नलिखित वाक्यांश के लिए एक सार्थक शब्द चुनिए।  
जिसे बुलाया न गया हो

- Ans
- 1. अमानत
  - 2. अगवानी
  - 3. अदेय
  - 4. अनाहूत

Question ID : 26433062730  
Status : Not Answered  
Chosen Option : --

Q.2 निम्नलिखित वाक्यों में कौन-सा अशुद्ध वाक्य है?

- Ans
- 1. शर्माजी बुलाए हैं।
  - 2. उन्होंने अफवाह फैलाई।
  - 3. मुझे मत मारो।
  - 4. बुराई से बचो।

Question ID : 26433079227  
Status : Not Answered  
Chosen Option : --

Q.3 निम्नलिखित में से कौन सा 'पत्र' का अर्थ नहीं है?

- Ans
- 1. मुख्य
  - 2. पत्ता
  - 3. चिट्ठी
  - 4. पत्रिका

Question ID : 26433080942  
Status : Not Answered  
Chosen Option : --

Q.4 वर्तनी की दृष्टि से दिए गए वाक्य के अशुद्ध भाग का चयन कीजिए-  
जब तक परीक्षा का दिन नहीं आया था तब तक उसने एक अक्षर नहीं पढ़ा था।

- Ans
- 1. तब तक उसने एक
  - 2. जब तक परीक्षा का
  - 3. दिन नहीं आया था
  - 4. अक्षर नहीं पढ़ा था।

Question ID : 26433062886  
Status : Not Answered  
Chosen Option : --

Q.5 निम्नलिखित में से कौन सा शब्द अनेकार्थी शब्द है?

- Ans
- 1. अंक
  - 2. दोस्त
  - 3. परिवार
  - 4. कबूतर

Question ID : 26433091322  
Status : Not Answered  
Chosen Option : --

Q.6 'इतना आलस्यता ठीक नहीं है।'  
उपरोक्त वाक्य का शुद्ध रूप क्या होगा?

- Ans
- 1. इतनी आलस्यता ठीक नहीं है।
  - 2. इतनी आलस्य नहीं है ठीक।
  - 3. इतना आलस्यता नहीं है ठीक।
  - 4. इतना आलस्य ठीक नहीं है।

Question ID : 26433066993  
Status : Not Answered  
Chosen Option : --

Q.7 निर्धन बालिका भूख से \_\_\_\_\_ थी।'  
उपरोक्त वाक्य के रिक्त स्थान की पूर्ति उचित शब्द के चयन द्वारा कीजिए।

- Ans
- 1. आतुर
  - 2. आकुल
  - 3. व्याकुल
  - 4. हकलान

Question ID : 26433080900  
Status : Not Answered  
Chosen Option : --

Q.8 निम्नलिखित में से कौन-सा वाक्य संज्ञा के प्रयोग की दृष्टि से शुद्ध है?

- Ans  1. सुमन के अनुसार शत्रुपण अच्छा नहीं है।  
 2. सुमन के अनुसार शत्रुता अच्छी नहीं है।  
 3. सुमन के अनुसार शत्रुत्व अच्छे नहीं है।  
 4. सुमन के अनुसार शत्रु अच्छी नहीं है।

Question ID : 26433066957  
Status : Not Answered  
Chosen Option : --

Q.9 प्रशंसनीय का विलोम होगा-

- Ans  1. स्तुत्य  
 2. निंदनीय  
 3. अभिनंदनीय  
 4. अनिंदनीय

Question ID : 26433062920  
Status : Not Answered  
Chosen Option : --

Q.10 'जो पहरा देता है' वाक्यांश के लिए सार्थक शब्द क्या होगा?

- Ans  1. सेवक  
 2. प्रहरी  
 3. प्रत्यागत  
 4. रक्षक

Question ID : 26433065865  
Status : Not Answered  
Chosen Option : --

Q.11 दिए गए विकल्पों में से कौन सा शब्द निम्नलिखित वाक्य में रेखांकित शब्द का पर्यायवाची नहीं है-  
बच्चे को बच्चा बनकर ही समझ सकते हैं।

- Ans  1. शिशु  
 2. बाल  
 3. बालक  
 4. वायु

Question ID : 26433091337  
Status : Not Answered  
Chosen Option : --



Q.12 निम्नलिखित वाक्य के रिक्त स्थान में सबसे उपयुक्त मुहावरा क्या होगा?  
'वह बिना कारण ही \_\_\_\_\_ है'

- Ans  1. मुँह फुला लेता  
 2. बाल-बाल बचना  
 3. मक्खी मारता  
 4. भूत सवार होता

Question ID : 26433066725  
Status : Not Answered  
Chosen Option : --

Q.13 मिश्र वाक्य - 'जब तुम मेरे घर आये थे तब चार बजा था।' निम्नलिखित विकल्पों में से इस वाक्य के लिए कौन सा एक उचित सरल वाक्य होगा?

- Ans  1. घर आये तुम चार बजे मेरे थे।  
 2. घर चार बजे तुम मेरे आये थे।  
 3. चार बजा जब तुम मेरे घर आये थे तब था।  
 4. तुम चार बजे मेरे घर आये थे।

Question ID : 26433062436  
Status : Not Answered  
Chosen Option : --

Q.14 निम्नलिखित वाक्य के रिक्त स्थान में सबसे उपयुक्त मुहावरा क्या होगा?  
'जेठ की गर्मी \_\_\_\_\_ जैसी होती है'

- Ans  1. ठंडी जैसी  
 2. अंगार बरसने जैसी  
 3. अंधकार जैसी  
 4. सर्दी जैसी

Question ID : 26433066731  
Status : Not Answered  
Chosen Option : --

Q.15 'कुछ लाभ पाने की चाह' वाक्यांश के लिए एक शब्द क्या होगा?

- Ans  1. पिपासा  
 2. प्रतीक्षा  
 3. लिप्सा  
 4. बुभुक्षा

Question ID : 26433065730  
Status : Not Answered  
Chosen Option : --

**Comprehension:**

निम्नलिखित गद्यांश में कुछ शब्दों को हटा दिया गया है। दिए गए विकल्पों की सहायता से रिक्त स्थानों की पूर्ति कीजिए। प्रत्येक संख्या के लिए सबसे उपयुक्त विकल्प का चयन करें।  
हम सभी को इस दुनिया में सफल होने के लिए हर जगह पर 1. \_\_\_\_\_ देनी पड़ती है। परीक्षाओं की 2. \_\_\_\_\_ बहुत पुरानी है। जीवन के लगभग 3. \_\_\_\_\_ में हम परीक्षाओं का सामना करते हैं। परीक्षाएं मौखिक या लिखित हो सकती हैं। हमलोग अपने विद्यालयों और महाविद्यालयों की परीक्षाओं में बैठते हैं। हमलोग अच्छी 4. \_\_\_\_\_ पाने के लिए भी परीक्षाओं में बैठते हैं। जैसे-जैसे हम ऊंची कक्षाओं में पहुंचते हैं, परीक्षाओं की 5. \_\_\_\_\_ का स्तर भी बढ़ जाता है।

**SubQuestion No : 16**

Q.16 रिक्त स्थान 1 की पूर्ति के लिए सबसे उपयुक्त विकल्प का चयन करें।

- Ans
- 1. रिश्त
  - 2. आधार कार्ड
  - 3. परीक्षा
  - 4. पैसे

Question ID : 264330110927

Status : Not Answered

Chosen Option : --

**Comprehension:**

निम्नलिखित गद्यांश में कुछ शब्दों को हटा दिया गया है। दिए गए विकल्पों की सहायता से रिक्त स्थानों की पूर्ति कीजिए। प्रत्येक संख्या के लिए सबसे उपयुक्त विकल्प का चयन करें।  
हम सभी को इस दुनिया में सफल होने के लिए हर जगह पर 1. \_\_\_\_\_ देनी पड़ती है। परीक्षाओं की 2. \_\_\_\_\_ बहुत पुरानी है। जीवन के लगभग 3. \_\_\_\_\_ में हम परीक्षाओं का सामना करते हैं। परीक्षाएं मौखिक या लिखित हो सकती हैं। हमलोग अपने विद्यालयों और महाविद्यालयों की परीक्षाओं में बैठते हैं। हमलोग अच्छी 4. \_\_\_\_\_ पाने के लिए भी परीक्षाओं में बैठते हैं। जैसे-जैसे हम ऊंची कक्षाओं में पहुंचते हैं, परीक्षाओं की 5. \_\_\_\_\_ का स्तर भी बढ़ जाता है।

**SubQuestion No : 17**

Q.17 रिक्त स्थान 2 की पूर्ति के लिए सबसे उपयुक्त विकल्प का चयन करें।

- Ans
- 1. अभिप्राय
  - 2. धारणा
  - 3. मामला
  - 4. मनसा

Question ID : 264330110928

Status : Not Answered

Chosen Option : --

**Comprehension:**

निम्नलिखित गद्यांश में कुछ शब्दों को हटा दिया गया है। दिए गए विकल्पों की सहायता से रिक्त स्थानों की पूर्ति कीजिए। प्रत्येक संख्या के लिए सबसे उपयुक्त विकल्प का चयन करें।  
हम सभी को इस दुनिया में सफल होने के लिए हर जगह पर 1. \_\_\_\_\_ देनी पड़ती है। परीक्षाओं की 2. \_\_\_\_\_ बहुत पुरानी है। जीवन के लगभग 3. \_\_\_\_\_ में हम परीक्षाओं का सामना करते हैं। परीक्षाएं मौखिक या लिखित हो सकती हैं। हमलोग अपने विद्यालयों और महाविद्यालयों की परीक्षाओं में बैठते हैं। हमलोग अच्छी 4. \_\_\_\_\_ पाने के लिए भी परीक्षाओं में बैठते हैं। जैसे-जैसे हम ऊंची कक्षाओं में पहुंचते हैं, परीक्षाओं की 5. \_\_\_\_\_ का स्तर भी बढ़ जाता है।

**SubQuestion No : 18**

Q.18 रिक्त स्थान 3 की पूर्ति के लिए सबसे उपयुक्त विकल्प का चयन करें।

- Ans
- 1. अपने क्षेत्र
  - 2. कुछ क्षेत्र
  - 3. हर क्षेत्र
  - 4. प्राथमिक क्षेत्र

Question ID : 264330110929

Status : Not Answered

Chosen Option : --

**Comprehension:**

निम्नलिखित गद्यांश में कुछ शब्दों को हटा दिया गया है। दिए गए विकल्पों की सहायता से रिक्त स्थानों की पूर्ति कीजिए। प्रत्येक संख्या के लिए सबसे उपयुक्त विकल्प का चयन करें।  
हम सभी को इस दुनिया में सफल होने के लिए हर जगह पर 1. \_\_\_\_\_ देनी पड़ती है। परीक्षाओं की 2. \_\_\_\_\_ बहुत पुरानी है। जीवन के लगभग 3. \_\_\_\_\_ में हम परीक्षाओं का सामना करते हैं। परीक्षाएं मौखिक या लिखित हो सकती हैं। हमलोग अपने विद्यालयों और महाविद्यालयों की परीक्षाओं में बैठते हैं। हमलोग अच्छी 4. \_\_\_\_\_ पाने के लिए भी परीक्षाओं में बैठते हैं। जैसे-जैसे हम ऊंची कक्षाओं में पहुंचते हैं, परीक्षाओं की 5. \_\_\_\_\_ का स्तर भी बढ़ जाता है।

**SubQuestion No : 19**

Q.19 रिक्त स्थान 4 की पूर्ति के लिए सबसे उपयुक्त विकल्प का चयन करें।

- Ans
- 1. गाड़ी
  - 2. परिवार
  - 3. घर
  - 4. नौकरी

Question ID : 264330110930

Status : Not Answered

Chosen Option : --

**Comprehension:**

निम्नलिखित गद्यांश में कुछ शब्दों को हटा दिया गया है। दिए गए विकल्पों की सहायता से रिक्त स्थानों की पूर्ति कीजिए। प्रत्येक संख्या के लिए सबसे उपयुक्त विकल्प का चयन करें।  
हम सभी को इस दुनिया में सफल होने के लिए हर जगह पर 1. \_\_\_\_\_ देनी पड़ती है। परीक्षाओं की 2. \_\_\_\_\_ बहुत पुरानी है। जीवन के लगभग 3. \_\_\_\_\_ में हम परीक्षाओं का सामना करते हैं। परीक्षाएं मौखिक या लिखित हो सकती हैं। हमलोग अपने विद्यालयों और महाविद्यालयों की परीक्षाओं में बैठते हैं। हमलोग अच्छी 4. \_\_\_\_\_ पाने के लिए भी परीक्षाओं में बैठते हैं। जैसे-जैसे हम ऊंची कक्षाओं में पहुंचते हैं, परीक्षाओं की 5. \_\_\_\_\_ का स्तर भी बढ़ जाता है।

**SubQuestion No : 20**

**Q.20** रिक्त स्थान 5 की पूर्ति के लिए सबसे उपयुक्त विकल्प का चयन करें।

- Ans**  1. कठिनता  
 2. सहजता  
 3. सरलता  
 4. सुगमता

Question ID : 264330110931

Status : Not Answered

Chosen Option : --

KD Job Updates

# Constable GD in CAPFs SSF Rifleman GD in Assam Rifles and Sepoy in NCB Examination 2022

Roll Number	KD Job Updates
Candidate Name	KD Job Updates
Venue Name	Pawan Ganga Educational Centre 1
Exam Date	13/01/2023
Exam Time	9:00 AM - 10:00 AM
Subject	Constable GD Examination 2022

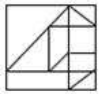
Section : Part-A-General Intelligence and Reasoning

Q.1 Select the letter-cluster from among the given options that can replace the question mark (?) in the following series.  
TDKV, MWOZ, FPSD, ? , RBAL

- Ans
- 1. YUXL
  - 2. TPSJ
  - 3. YDHX
  - 4. YIWH

Question ID : 26433074750  
Status : Answered  
Chosen Option : 4

Q.2 Select the option figure that is embedded in the given figure (rotation is NOT allowed).



- Ans
- 1.
  - 2.
  - 3.
  - 4.

Question ID : 26433069487  
Status : Answered  
Chosen Option : 2

Q.3 Select the correct mirror image of the given combination when the mirror is placed at 'PQ' as shown below.

\OITR#36789@ |  
P  
Q

- Ans
- ✓ 1. @e87ae#ЯTIO/
  - ✗ 2. @8e7ae#ЯTIO\
  - ✗ 3. @8e7ae#ЯTIO/
  - ✗ 4. @e87ae#ЯTIO\

Question ID : 26433082747  
Status : Answered  
Chosen Option : 1

Q.4 Which option represents the correct order of the given words as they would appear in the English dictionary?

1. Tasty
2. Tackle
3. Tamarind
4. Tadpole
5. Tagline

- Ans
- ✗ 1. 4,3,2,5,1
  - ✗ 2. 4,3,2,1,5
  - ✓ 3. 2,4,5,3,1
  - ✗ 4. 2,4,3,5,1

Question ID : 26433069276  
Status : Answered  
Chosen Option : 3

Q.5 Six students are sitting around a circular table facing the centre. Marshal is sitting second to the left of Sandra. Carol is sitting second to the right of Sandra. Shashi is the immediate neighbour of Sandra and Carol. Sahil is sitting third to the left of Sandra. Jade is sitting third to the left of Carol. Who is sitting between Marshal and Carol?

- Ans
- ✓ 1. Sahil
  - ✗ 2. Sandra
  - ✗ 3. Jade
  - ✗ 4. Shashi

Question ID : 26433081781  
Status : Not Answered  
Chosen Option : --

Q.6 Six people J, K, L, M, N and O are sitting in a straight row, facing north. O and N are sitting at the extreme ends of the line. There are only three people to the right of K and only three people to the left of J. O is sitting second to the left of K. M is sitting in between J and N. Who is sitting in between O and K?

- Ans
- 1. M
  - 2. L
  - 3. J
  - 4. N

Question ID : 26433056045  
Status : Answered  
Chosen Option : 2

Q.7 'Flow' is related to 'Stagnant' in the same way as 'Fall' is related to '\_\_\_\_\_'.  
(The words must be considered as meaningful English words and must not be related to each other based on the number of letters/number of consonants/vowels in the word)

- Ans
- 1. Rise
  - 2. Drop
  - 3. Market
  - 4. Static

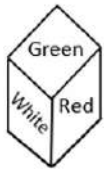
Question ID : 26433057753  
Status : Answered  
Chosen Option : 4

Q.8 In a certain code language BANTER is written as 'EZQSHQ' and HAVEN is written as 'KZYDQ'. How will ADVENT be written in the same code language?

- Ans
- 1. DCYDQS
  - 2. DCZEPU
  - 3. DBYCOS
  - 4. DBYDPS

Question ID : 26433076683  
Status : Answered  
Chosen Option : 1

**Q.9** Two different positions of the same dice are shown having colours- Red, Blue, Pink, Green, white and black.  
Find the colour on the face opposite to the face showing 'Green'.



- Ans
- 1. Black
  - 2. White
  - 3. Pink
  - 4. Blue

Question ID : 26433085517

Status : Answered

Chosen Option : 3

**Q.10** In a certain code language,  
'A + B' means 'A is the mother of B',  
'A - B' means 'A is the father of B',  
'A x B' means 'A is the brother of B',  
'A & B' means 'A is the son of B' and  
'A @ B' means 'A is the sister of B'.  
How is G related to N if N x P @ Q - L x M & G?

- Ans
- 1. Brother's wife
  - 2. Sister
  - 3. Wife
  - 4. Mother

Question ID : 26433070369

Status : Not Answered

Chosen Option : --

**Q.11** Which two signs should be interchanged to make the below equation mathematically correct?  
 $35 + 21 - 168 \div 28 \times 7 = 154$

- Ans
- 1. - and +
  - 2. + and ÷
  - 3. × and -
  - 4. ÷ and -

Question ID : 264330117522

Status : Not Answered

Chosen Option : --



Q.12 Which of the following letters will replace the question mark (?) and complete the following letter series?  
D, B, X, R, J, ?

- Ans  1. A  
 2. Y  
 3. Z  
 4. X

Question ID : 26433067290  
Status : Answered  
Chosen Option : 3

Q.13 Three statements are given followed by three conclusions numbered I, II and III. Assuming the statements to be true, even if they seem to be at variance with commonly known facts, decide which of the conclusions logically follow(s) from the statements.

Statements:

- All tubes are pipes.
- All switches are pipes.
- All pipes are boards.

Conclusions:

- I. All switches are boards.
- II. All boards are tubes.
- III. Some boards are switches.

- Ans  1. Only conclusions I and II follow  
 2. Only conclusions I and III follow  
 3. Only conclusions II and III follow  
 4. All conclusions follow

Question ID : 26433082302  
Status : Answered  
Chosen Option : 1

Q.14 In a code language, 'DEVOTE' is written as '71' and 'DIALECT' is written as '54'. How will 'DIESEL' be written in that language?

- Ans  1. 54  
 2. 53  
 3. 47  
 4. 49

Question ID : 26433068934  
Status : Answered  
Chosen Option : 1

Q.15 Which two signs should be interchanged to make the below equation mathematically correct?

$$45 + 3 \div 27 - 9 \times 18 = 14$$

- Ans  1. + and -  
 2.  $\times$  and +  
 3.  $\div$  and +  
 4.  $\div$  and  $\times$

Question ID : 264330114188  
Status : Not Answered  
Chosen Option : --

**Q.16** Which of the following numbers will replace the question mark (?) in the given series?  
2, ?, 10, 14, 18, 22, 26, 30

Ans  1. 6

2. 7

3. 8

4. 5

Question ID : 26433069054

Status : Answered

Chosen Option : 1

**Q.17** Select the option that is related to the fourth term in the same way as the first term is related to the second term and the fifth term is related to the sixth term.  
18 : 30 :: ? : 66 :: 54 : 102

Ans  1. 36

2. 46

3. 42

4. 38

Question ID : 26433069085

Status : Answered

Chosen Option : 1

**Q.18** Select the option that is related to the third word in the same way as the second word is related to the first word.  
(The words must be considered as meaningful English words and must not be related to each other based on the number of letters/number of consonants/vowels in the word)  
Poem : Poet :: Shoes : ?

Ans  1. Cobbler

2. Carpenter

3. Doctor

4. Chef

Question ID : 26433079471

Status : Answered

Chosen Option : 1

Q.19 Which figure should replace the question mark (?) if the series were to be continued?

O	B	K	L	
B L A C K	O C L A S	L O C S A	K S O C B	?
S	K	B	A	

Ans

✗ 1. 

A
S O K B C
L

✗ 2. 

A
S O C B K
L

✗ 3. 

A
B K S O C
L

✓ 4. 

A
O K S B C
L

Question ID : 26433076628  
Status : Answered  
Chosen Option : 3

Q.20 Which of the following numbers will replace the question mark (?) in the given series?  
40, 40, ?, 58, 76, 100, 130

Ans ✓ 1. 46

✗ 2. 55

✗ 3. 70

✗ 4. 45

Question ID : 26433069402  
Status : Answered  
Chosen Option : 1

Q.1 The \_\_\_\_\_ has the authority to regulate microfinance in India.

- Ans  1. State Bank of India  
 2. Reserve Bank of India  
 3. Union Bank of India  
 4. Rural Bank of India

Question ID : 264330115309  
Status : Not Answered  
Chosen Option : --

Q.2 Which was not the part of Original Indian Constitution that was adopted in the year 1950?

- Ans  1. Emergency Provisions  
 2. Fundamental Duties  
 3. Directive Principles of State Policy  
 4. Fundamental Rights

Question ID : 264330115627  
Status : Not Answered  
Chosen Option : --

Q.3 Bastar Rebellion in central India broke out in \_\_\_\_\_.

- Ans  1. 1905  
 2. 1910  
 3. 1915  
 4. 1918

Question ID : 264330115716  
Status : Not Answered  
Chosen Option : --

Q.4 Identify the energy used in cooking food.

- Ans  1. Wind energy  
 2. Electrical energy  
 3. Chemical energy  
 4. Mechanical energy

Question ID : 26433087837  
Status : Not Answered  
Chosen Option : --

**Q.5 Pawan Hans Helicopters Limited provides helicopter services to whom in its off-shore operations?**

- Ans
- 1. Hindustan Petroleum Corporation Limited
  - 2. Indian Oil
  - 3. Oil and Natural Gas Corporation
  - 4. Oil India and Reliance Industries

Question ID : 264330115556  
Status : Not Answered  
Chosen Option : --

**Q.6 Which of the following is a type of earthquake wave?**

- Ans
- 1. D-waves
  - 2. P-waves
  - 3. B-waves
  - 4. C-waves

Question ID : 264330115992  
Status : Not Answered  
Chosen Option : --

**Q.7 Which of the following famous bollywood personalities won the by-elections in April 2022 to become the Member of Parliament from Asansol, West Bengal?**

- Ans
- 1. Sonu Sood
  - 2. Babul Supriyo
  - 3. Shatrughan Sinha
  - 4. Jaya Bachchan

Question ID : 264330115012  
Status : Not Answered  
Chosen Option : --

**Q.8 Indian Olympic Association was formed in which year?**

- Ans
- 1. 1927
  - 2. 1934
  - 3. 1928
  - 4. 1943

Question ID : 264330116266  
Status : Answered  
Chosen Option : 2

**Q.9 What is the timeframe of the second five year plan of India?**

- Ans  1. 1951 - 56  
 2. 1957 - 62  
 3. 1948 - 53  
 4. 1956 - 61

Question ID : 26433054611  
Status : Answered  
Chosen Option : 2

**Q.10 \_\_\_\_\_ five year plan was launched with specific objective of "Growth with Stability"**

- Ans  1. Eighth  
 2. First  
 3. Second  
 4. Fourth

Question ID : 264330115373  
Status : Not Answered  
Chosen Option : --

**Q.11 As of November 2022, who among the following is the Governor of Uttar Pradesh, India?**

- Ans  1. Arif Mohammad Khan  
 2. Ram Naik  
 3. Sudarshan Agrawal  
 4. Anandiben Patel

Question ID : 264330114907  
Status : Not Answered  
Chosen Option : --

**Q.12 When was the Supreme Court of India inaugurated?**

- Ans  1. 26 January 1952  
 2. 28 January 1952  
 3. 26 January 1948  
 4. 28 January 1950

Question ID : 26433074907  
Status : Not Answered  
Chosen Option : --

Q.13 Which of the following folk dances is associated with Jammu and Kashmir?

- Ans  1. Kud  
 2. Jawara  
 3. Bhavai  
 4. Hojagiri

Question ID : 26433070840  
Status : Answered  
Chosen Option : 1

Q.14 The motto of Asian Games 2018 was \_\_\_\_\_.

- Ans  1. Diversity Shines Here  
 2. Play for Peace, Progress and Prosperity  
 3. Ever Onward  
 4. Energy of Asia

Question ID : 264330115959  
Status : Not Answered  
Chosen Option : --

Q.15 Under which scheme, an overdraft (OD) facility up to Rs. 10,000 is available to eligible account holders?

- Ans  1. Pradhan Mantri Kaushal Vikas Yojana  
 2. Pradhan Mantri Suraksha Bima Yojana  
 3. Pradhan Mantri Jan-Dhan Yojana  
 4. Skill India Mission

Question ID : 264330116198  
Status : Not Answered  
Chosen Option : --

Q.16 Who among the following was the last king of the Mauryan empire?

- Ans  1. Ashoka  
 2. Bindusara  
 3. Chandragupta  
 4. Brihadratha

Question ID : 264330115445  
Status : Not Answered  
Chosen Option : --

Q.17 Which Indian state has the second lowest literacy rate as per the Census report 2011?

- Ans  1. Himachal Pradesh  
 2. Mizoram  
 3. Rajasthan  
 4. Arunachal Pradesh

Question ID : 264330116061  
Status : Answered  
Chosen Option : 4

Q.18 If the proportion of fine particles is relatively higher in soil, then it is called \_\_\_\_\_ soil.

- Ans  1. sandy  
 2. watery  
 3. clayey  
 4. loamy

Question ID : 264330115194  
Status : Not Answered  
Chosen Option : --

Q.19 सेकेरनेई, नागालैंड का एक प्रमुख त्यौहार है, यह एक \_\_\_\_\_ दिवसीय उत्सव है, जो शुद्धि और पवित्रता का प्रतीक है।

- Ans  1. 10-15  
 2. 9-13  
 3. 7-8  
 4. 8-10

Question ID : 264330115093  
Status : Not Answered  
Chosen Option : --

Q.20 Which of the following artist has received the Soviet Land Nehru Award?

- Ans  1. Thiruvaidamarudur Kuppiyah Kalyanasundaram  
 2. Pandit Birju Maharaj  
 3. Krishna Ella  
 4. Mahaboob Subhani

Question ID : 264330115852  
Status : Not Answered  
Chosen Option : --

Section : Part-C-Elementary Mathematics

Q.1 A boat's speed in still water is 9 km/h, while the stream's speed is 1.5 km/h. A man rows to a location 105 km away and then returns to his starting position. The total time taken by him is:

- Ans  1. 20.5 hours  
 2. 24 hours  
 3. 19 hours  
 4. 22 hours

Question ID : 26433065296  
Status : Not Answered  
Chosen Option : --



Q.2 A retailer purchased some goods for ₹1,280 and he sold one-third at a loss of 15%. At what gain percentage should the remaining be sold, so as to gain 15% on the whole transaction?

- Ans
- 1. 32 Percent
  - 2. 30 Percent
  - 3. 28 Percent
  - 4. 31 Percent

Question ID : 26433080166  
Status : Not Answered  
Chosen Option : --

Q.3 A sofa-set is offered for sale at three successive discounts of 10%, 5%, and 2%. Find the net selling price of the sofa-set, if its marked price is ₹18,000.

- Ans
- 1. ₹16,920.28
  - 2. ₹16,084.00
  - 3. ₹15,082.20
  - 4. ₹17,230.00

Question ID : 26433076327  
Status : Not Answered  
Chosen Option : --

Q.4 Ratio of Copper and Gold in first and second alloy are 3 : 4 and 2 : 5 respectively. 14 kg of the first alloy is mixed with 21 kg of the second alloy. Find the ratio of Copper and Gold, respectively, in the new mixture.

- Ans
- 1. 23 : 12
  - 2. 17 : 13
  - 3. 5 : 9
  - 4. 12 : 23

Question ID : 26433076030  
Status : Not Answered  
Chosen Option : --

Q.5 P can do a piece of work in 200 days. Q and R can do the same work in 100 days. P, Q and R started the work together and they worked together for 40 days and then Q left the work and P and R together finished the remaining work in 40 days. Find the number of days in which Q alone can do the total work.

- Ans
- 1. 180 days
  - 2. 200 days
  - 3. 160 days
  - 4. 210 days

Question ID : 264330116882  
Status : Not Answered  
Chosen Option : --

Q.6 If a shopkeeper offers a 10% discount, he makes a 10% profit. Under the same conditions, if he offers a 25% discount, then how much percentage of profit or loss will he get?

- Ans
- 1. 25% loss
  - 2. 20% profit
  - 3. 25% profit
  - 4. 8.33% loss

Question ID : 26433076035  
Status : Not Answered  
Chosen Option : --

Q.7 Find the greatest possible length which can be used to measure exactly the lengths 8 m 75 cm, 1.75 m and 12 m 20 cm.

- Ans
- 1. 10 cm
  - 2. 15 cm
  - 3. 5 cm
  - 4. 20 cm

Question ID : 26433081467  
Status : Not Answered  
Chosen Option : --

Q.8 Sohan borrowed money at the rate of 20% per annum on compound interest, interest was compounding annually and he paid it in three equal instalments, each instalment was to be paid at the end of every year. If each instalment was for ₹1,250, then the money borrowed by Sohan was (nearest integral value):

- Ans
- 1. ₹2,633
  - 2. ₹2,466
  - 3. ₹4,660
  - 4. ₹4,860

Question ID : 26433090305  
Status : Not Answered  
Chosen Option : --

Q.9 The difference between simple and compound interests compounded annually on a certain sum of money for 2 years at 4% per annum is Rs.80. The sum (in Rs.) is:

- Ans
- 1. 50,000
  - 2. 45,000
  - 3. 60,000
  - 4. 70,000

Question ID : 26433075240  
Status : Answered  
Chosen Option : 1

Q.10 The marked price of an article is 25% above its cost price. If it is sold for ₹450 with a profit of 6.4%, then the discount percent is closest to:

- Ans
- 1. 13%
  - 2. 16%
  - 3. 12%
  - 4. 15%

Question ID : 26433080109  
Status : Not Answered  
Chosen Option : --

Q.11 In an election between A and B, B secured 16,200 votes and defeated A by 8% of the total votes. If there are no invalid votes, what is the difference in votes between A and B?

- Ans
- 1. 2300
  - 2. 2500
  - 3. 2200
  - 4. 2400

Question ID : 26433085435  
Status : Not Answered  
Chosen Option : --

Q.12 The average of 7 natural numbers is 70. Among them six numbers are 32, 69, 72, 65, 79, 48. What is the seventh number?

- Ans
- 1. 120
  - 2. 135
  - 3. 125
  - 4. 130

Question ID : 26433080285  
Status : Answered  
Chosen Option : 3

Q.13 The area of a right-angled triangle is  $42 \text{ cm}^2$ . If its perpendicular is equal to 10 cm, find the length of its base.

- Ans
- 1. 4.8 cm
  - 2. 4.2 cm
  - 3. 8.4 cm
  - 4. 8.0 cm

Question ID : 26433075278  
Status : Answered  
Chosen Option : 3

Q.14 The fourth proportional to 3,5,9 is:

- Ans  1. 135  
 2. 45  
 3. 27  
 4. 15

Question ID : 26433073023  
Status : Answered  
Chosen Option : 4

Q.15 A solid sphere is cut into two equal halves. What is the ratio of the total surface area of each hemisphere to that of the solid sphere?

- Ans  1. 2:3  
 2. 1:2  
 3. 3:5  
 4. 3:4

Question ID : 26433075479  
Status : Answered  
Chosen Option : 4

Q.16 Find the mean proportional between 256 and 484.

- Ans  1. 360  
 2. 323  
 3. 352  
 4. 552

Question ID : 26433081025  
Status : Answered  
Chosen Option : 3

Q.17 A car driver is driving car at a speed of 70 km/h and a bus is moving 35 metres ahead of him. After 15 seconds, the bus is 40 metres behind of him. Find the speed of the bus.

- Ans  1. 78 km/h  
 2. 52 km/h  
 3. 64 km/h  
 4. 65 km/h

Question ID : 26433076198  
Status : Not Answered  
Chosen Option : --

Q.18 A and B can complete a piece of work in 18 days and 12 days, respectively. They work on alternate days till the work gets completed. How long (in days) would it take A and B to complete the work, starting with A on the first day?

- Ans
- 1. 15 days
  - 2. 14 days
  - 3. 16 days
  - 4. 14.5 days

Question ID : 26433075773  
Status : Answered  
Chosen Option : 4

Q.19 In an election contested by two parties, party A secured 16 percent of the total votes more than party B. If party B got 25200 votes and there are no invalid votes, by how many votes did party B lose the election?

- Ans
- 1. 9600
  - 2. 1800
  - 3. 5400
  - 4. 3600

Question ID : 264330116802  
Status : Not Answered  
Chosen Option : --

Q.20 Express  $0.45\overline{235}$  as a fraction.

- Ans
- 1.  $\frac{1419}{99900}$
  - 2.  $\frac{14190}{9990}$
  - 3.  $\frac{1491}{9990}$
  - 4.  $\frac{4519}{9990}$

Question ID : 26433092020  
Status : Not Answered  
Chosen Option : --

**Q.1** Select the most appropriate **ANTONYM** of the word given in brackets to fill in the blank.

The doctor had to go with operation as Raj's condition was very \_\_\_\_\_ (comical).

- Ans
- 1. serious
  - 2. prone
  - 3. curious
  - 4. peculiar

Question ID : 26433089749  
Status : Answered  
Chosen Option : 1

**Q.2** Select the **INCORRECTLY** spelt word.

- Ans
- 1. Flimsy
  - 2. Etiquette
  - 3. Supercede
  - 4. Intercede

Question ID : 26433074001  
Status : Answered  
Chosen Option : 2

**Q.3** Select the most appropriate synonym of the given word to fill in the blank in the sentence.

Yields  
Binu's land \_\_\_\_\_ high quality of wheat and grams.

- Ans
- 1. touches
  - 2. subdues
  - 3. produces
  - 4. meets

Question ID : 26433060551  
Status : Answered  
Chosen Option : 3

**Q.4** Select the word segment that substitutes (replaces) the bracketed word segment correctly and completes the sentence meaningfully.  
Nishtha writes very well, (didn't she)?

- Ans
- 1. isn't it
  - 2. wasn't it
  - 3. doesn't it
  - 4. doesn't she

Question ID : 26433088797  
Status : Answered  
Chosen Option : 4

Q.5 Select the most appropriate ANTONYM of the given word.

Brittle

- Ans
- 1. Delicate
  - 2. Bitter
  - 3. Attractive
  - 4. Resilient

Question ID : 26433071975

Status : **Not Attempted and Marked For Review**

Chosen Option : --

Q.6 Select the most appropriate meaning of the given idiom.

Blow one's own trumpet

- Ans
- 1. To be very keen
  - 2. To be confused
  - 3. To disgrace oneself
  - 4. To praise oneself

Question ID : 26433074057

Status : **Answered**

Chosen Option : 3

Q.7 Select the most appropriate synonym of the given word.

Dazzling

- Ans
- 1. Brilliant
  - 2. Drizzly
  - 3. Murky
  - 4. Dull

Question ID : 26433073435

Status : **Not Attempted and Marked For Review**

Chosen Option : --

Q.8 The following sentence has been split into four segments. Identify the segment that contains a grammatical error.

While my wife / cooked the food, / I writing / a book.

- Ans
- 1. a book
  - 2. cooked the food,
  - 3. I writing
  - 4. While my wife

Question ID : 26433086451

Status : **Answered**

Chosen Option : 3

Q.9 Select the most appropriate synonym to substitute the underlined word in the given sentence.

He had created a cocoon of human activities - conversation, interaction, affection - and it filled his life like an overflowing soup bowl.

- Ans
- 1. bundle
  - 2. fabric
  - 3. encasement
  - 4. downy

Question ID : 26433073866

Status : **Not Attempted and Marked For Review**

Chosen Option : --

Q.10 Select the INCORRECTLY spelt word.

- Ans
- 1. Garrulous
  - 2. Simultaneous
  - 3. Technike
  - 4. Reluctant

Question ID : 26433073730

Status : **Answered**

Chosen Option : 3

Q.11 Select the most appropriate ANTONYM of the underlined word to fill in the blank.

He borrowed money from his father and \_\_\_\_\_ it to his friend to help him.

- Ans
- 1. reckoned
  - 2. beguiled
  - 3. lent
  - 4. beget

Question ID : 26433089069

Status : **Not Attempted and Marked For Review**

Chosen Option : --

Q.12 Select the most appropriate option to fill in the blank.

The manager decided to \_\_\_\_\_ the meeting, as many of the members were not present.

- Ans
- 1. cut down
  - 2. call off
  - 3. call on
  - 4. carry on

Question ID : 26433073408

Status : **Answered**

Chosen Option : 4



Q.13 Select the most appropriate ANTONYM of the given word.

Applaud

- Ans
- 1. Commend
  - 2. Magnify
  - 3. Approve
  - 4. Denounce

Question ID : 26433072670

Status : **Not Attempted and Marked For Review**

Chosen Option : --

Q.14 Select the appropriate idiom that can replace the underlined phrase in the following sentence.

As he is never on time, he regrets uselessly on missing the flight.

- Ans
- 1. cries wolf
  - 2. finds fault with
  - 3. cries for the moon
  - 4. cries over split milk

Question ID : 26433072516

Status : **Answered**

Chosen Option : 3

Q.15 Select the most appropriate option that can substitute the underlined segment in the given sentence.

VPN allows us to use the internet anonymously to value our safety and our identity.

- Ans
- 1. to derogate our safety
  - 2. to ensure our safety
  - 3. to improve our safety
  - 4. to rationalise our safety

Question ID : 26433096157

Status : **Answered**

Chosen Option : 3

**Comprehension:**

In the following passage, some words have been deleted. Read the passage carefully and select the most appropriate option to fill in each blank.

Munoo began (1)\_\_\_\_\_. He felt resentful and disheartened, thinking how he hated his uncle. But he saw that the fellow on the steel horse, who had been the cause of his (2)\_\_\_\_\_, had come to grief fifty yards ahead, having collided with a calf (3) \_\_\_\_\_ among the crowds of men and women near the fruit shops at the crossroads. So he walked along reassured, forgetful still but sufficiently cautious, with (4) \_\_\_\_\_ ahead of him, another on the row of shops, and an occasional glance behind, to see that there was not another steel horse, or bicycle, as the juggler (5)\_\_\_\_\_ it, following.

**SubQuestion No : 16**

**Q.16 Select the most appropriate option to fill in blank number 1.**

- Ans
- 1. cry
  - 2. cried
  - 3. having cried
  - 4. to cry

Question ID : 26433063571

Status : Answered

Chosen Option : 4

**Comprehension:**

In the following passage, some words have been deleted. Read the passage carefully and select the most appropriate option to fill in each blank.

Munoo began (1)\_\_\_\_\_. He felt resentful and disheartened, thinking how he hated his uncle. But he saw that the fellow on the steel horse, who had been the cause of his (2)\_\_\_\_\_, had come to grief fifty yards ahead, having collided with a calf (3) \_\_\_\_\_ among the crowds of men and women near the fruit shops at the crossroads. So he walked along reassured, forgetful still but sufficiently cautious, with (4) \_\_\_\_\_ ahead of him, another on the row of shops, and an occasional glance behind, to see that there was not another steel horse, or bicycle, as the juggler (5)\_\_\_\_\_ it, following.

**SubQuestion No : 17**

**Q.17 Select the most appropriate option to fill in blank number 2.**

- Ans
- 1. have punished
  - 2. be punished
  - 3. having punish
  - 4. punishment

Question ID : 26433063572

Status : Answered

Chosen Option : 4

**Comprehension:**

In the following passage, some words have been deleted. Read the passage carefully and select the most appropriate option to fill in each blank.

Munoo began (1)\_\_\_\_\_. He felt resentful and disheartened, thinking how he hated his uncle. But he saw that the fellow on the steel horse, who had been the cause of his (2)\_\_\_\_\_, had come to grief fifty yards ahead, having collided with a calf (3) \_\_\_\_\_ among the crowds of men and women near the fruit shops at the crossroads. So he walked along reassured, forgetful still but sufficiently cautious, with (4) \_\_\_\_\_ ahead of him, another on the row of shops, and an occasional glance behind, to see that there was not another steel horse, or bicycle, as the juggler (5)\_\_\_\_\_ it, following.

**SubQuestion No : 18**

**Q.18 Select the most appropriate option to fill in blank number 3.**

- Ans
- 1. whom strayed about
  - 2. who strayed about
  - 3. that strayed
  - 4. whose strayed about

Question ID : 26433063573

Status : Answered

Chosen Option : 1

**Comprehension:**

In the following passage, some words have been deleted. Read the passage carefully and select the most appropriate option to fill in each blank.

Munoo began (1)\_\_\_\_\_. He felt resentful and disheartened, thinking how he hated his uncle. But he saw that the fellow on the steel horse, who had been the cause of his (2)\_\_\_\_\_, had come to grief fifty yards ahead, having collided with a calf (3) \_\_\_\_\_ among the crowds of men and women near the fruit shops at the crossroads. So he walked along reassured, forgetful still but sufficiently cautious, with (4) \_\_\_\_\_ ahead of him, another on the row of shops, and an occasional glance behind, to see that there was not another steel horse, or bicycle, as the juggler (5)\_\_\_\_\_ it, following.

**SubQuestion No : 19**

**Q.19 Select the most appropriate option to fill in blank number 4.**

- Ans
- 1. one eye in his uncle
  - 2. one eye on his uncle
  - 3. one eye about his uncle
  - 4. one eye with his uncle

Question ID : 26433063574

Status : Not Answered

Chosen Option : --

**Comprehension:**

In the following passage, some words have been deleted. Read the passage carefully and select the most appropriate option to fill in each blank.

Munoo began (1)\_\_\_\_\_. He felt resentful and disheartened, thinking how he hated his uncle. But he saw that the fellow on the steel horse, who had been the cause of his (2)\_\_\_\_\_, had come to grief fifty yards ahead, having collided with a calf (3) \_\_\_\_\_ among the crowds of men and women near the fruit shops at the crossroads. So he walked along reassured, forgetful still but sufficiently cautious, with (4) \_\_\_\_\_ ahead of him, another on the row of shops, and an occasional glance behind, to see that there was not another steel horse, or bicycle, as the juggler (5)\_\_\_\_\_ it, following.

**SubQuestion No : 20**

**Q.20** Select the most appropriate option to fill in blank number 5.

- Ans  1. have been called  
 2. had called  
 3. has called  
 4. had been called

Question ID : 26433063575

Status : Answered

Chosen Option : 2

**Section : Part-D-Hindi**

**Q.1** निम्न वाक्यांश के लिए सार्थक शब्द का चयन विकल्पों में से कीजिए।  
जिसके पार देखा जा सके।

- Ans  1. पारभासक  
 2. पारमासक  
 3. पाददर्शन  
 4. पारदर्शक

Question ID : 26433066923

Status : Not Answered

Chosen Option : --

**Q.2** निम्नलिखित में से कौन सा वाक्य करण कारक का उदाहरण नहीं है?

- Ans  1. वह कलम से पत्र लिख रही थी।  
 2. सब ही भाग्य को रोते हैं।  
 3. बच्चे गेंद से खेल रहे हैं।  
 4. मैंने लाठी से सांप मारा।

Question ID : 26433085034

Status : Not Answered

Chosen Option : --

Q.3 भगवान इंद्र स्वर्ग के राजा हैं।  
उपरोक्त वाक्य में प्रयुक्त 'इंद्र' शब्द का पर्याय निम्न में से क्या है?

- Ans
- 1. खगेश
  - 2. माधव
  - 3. इंद्रु
  - 4. सुरेश

Question ID : 26433080857  
Status : Not Answered  
Chosen Option : --

Q.4 निम्नलिखित में से 'पट' का अर्थ क्या नहीं होता है?

- Ans
- 1. किवाड़
  - 2. डालना
  - 3. वस्त्र
  - 4. पर्दा

Question ID : 26433080944  
Status : Not Answered  
Chosen Option : --

Q.5 नीचे दिए शब्द के लिए उचित वाक्यांश दिए गए विकल्पों में से चुनिए-  
अभूतपूर्व

- Ans
- 1. जो भेदा न जा सके
  - 2. जो किसी पर अभियोग लगाए
  - 3. जिस पर अभियोग लगाया गया हो
  - 4. जो पहले घटित न हुआ हो

Question ID : 26433062390  
Status : Not Answered  
Chosen Option : --

Q.6 नीचे दिए गए वाक्यांश के लिए एक शब्द होगा-  
जिस पेड़ के पत्ते झड़ गए हों।

- Ans
- 1. पर्णल
  - 2. अधेर
  - 3. अपर्ण
  - 4. सूखा

Question ID : 26433070065  
Status : Not Answered  
Chosen Option : --

Q.7 निम्नलिखित वाक्य के रिक्त स्थान में सबसे उपयुक्त मुहावरा क्या होगा?  
'अध्यापक को देखते ही वह \_\_\_\_\_ गया।'

- Ans
- 1. भीगी बिल्ली बन
  - 2. बाजी मार
  - 3. मुहतोड़ जवाब देना
  - 4. पहाड़ टूट

Question ID : 26433066727  
Status : Not Answered  
Chosen Option : --

Q.8 जो परिश्रम करते हैं, वे सफल होते हैं।  
उपरोक्त वाक्य के किस शब्द में वर्तनीगत अशुद्धि है?

- Ans
- 1. सफल
  - 2. करते
  - 3. परिश्रम
  - 4. वाक्य शुद्ध है

Question ID : 26433085062  
Status : Not Answered  
Chosen Option : --

Q.9 निम्नलिखित विकल्पों में से कौन सा एक वाक्य क्रिया-विशेषण से सम्बन्ध रखता है?

- Ans
- 1. कोई काम न करना।
  - 2. तुम घर जाओ।
  - 3. क्या मैं घर जाऊँ।
  - 4. वह अब धीरे-धीरे चलेगा।

Question ID : 26433062954  
Status : Not Answered  
Chosen Option : --

Q.10 निम्नलिखित मुहावरे के उचित अर्थ का चयन कीजिए-  
अपना किया पाना

- Ans
- 1. कम काम करना
  - 2. अपनी वस्तु पाना
  - 3. कर्म का फल भोगना
  - 4. कुछ न करना

Question ID : 26433065886  
Status : Not Answered  
Chosen Option : --

Q.11 आकाश में तारे निकले हुए हैं।  
उपरोक्त वाक्य में रेखांकित शब्द के विलोम शब्द का चयन विकल्पों में से कीजिए।

- Ans  1. पाताल  
 2. आसमान  
 3. उदर  
 4. वन

Question ID : 26433079640  
Status : Not Answered  
Chosen Option : --

Q.12 निम्नलिखित वाक्य के किस शब्द में वर्तनीगत अशुद्धि है?  
हमारे मन में प्राणी मत्र के लिए करुणा होनी चाहिए।

- Ans  1. प्राणी  
 2. हमारे  
 3. मत्र  
 4. करुणा

Question ID : 26433080929  
Status : Not Answered  
Chosen Option : --

Q.13 निम्न वाक्य में रेखांकित शब्द को विकल्पों में दिए गए शब्दों में से उचित शब्द से बदलें।  
राम की वाणी से परशुराम का अहंकार काफूर हो गया।

- Ans  1. धनुष  
 2. दंश  
 3. अभियान  
 4. दर्प

Question ID : 26433074410  
Status : Not Answered  
Chosen Option : --

Q.14 मिश्र वाक्य - 'जब मैंने तुम्हें देखा था, तुम रुग्णावस्था में थे।' निम्नलिखित विकल्पों में से इस वाक्य के लिए कौन सा एक उचित सरल वाक्य होगा?

- Ans  1. जब तुम्हें देखा था, तुम रुग्णावस्था में थे।  
 2. मैंने तुम्हें रुग्णावस्था में देखा था।  
 3. रुग्णावस्था में जब तुम्हें देखा था।  
 4. तुम रुग्णावस्था में जब मैंने तुम्हें देखा था।

Question ID : 26433062438  
Status : Not Answered  
Chosen Option : --

Q.15 'मुंशी प्रेमचन्द द्वारा लिखित कहानियाँ अद्वितीय हैं।' वाक्य में प्रयुक्त 'अद्वितीय' शब्द का अर्थ क्या है?

- Ans
- 1. जिसकी किसी से समानता की जा सके।
  - 2. जो किसी के समान हो।
  - 3. जिसके समान कोई दूसरा न हो।
  - 4. जो बहुत अच्छा हो।

Question ID : 26433069735

Status : Not Answered

Chosen Option : --

**Comprehension:**

निम्नलिखित गद्यांश में कुछ शब्दों को हटा दिया गया है। दिए गए विकल्पों की सहायता से रिक्त स्थानों की पूर्ति कीजिए।

एक बार 1. \_\_\_\_\_ बात है। मैं दिल्ली 2. \_\_\_\_\_ आगरा जा रहा था। जब मैं 3. \_\_\_\_\_ पर पहुंचा तो गाड़ी चलने वाली थी। मुझे उस गाड़ी में जाना अवश्य था, अतः बिना 4. \_\_\_\_\_ लिए एक डिब्बे में चढ़ गया। अभी एक स्टेशन ही निकला था कि डिब्बे में 5. \_\_\_\_\_ आ गया।

SubQuestion No : 16

Q.16 रिक्त स्थान 1 की पूर्ति के लिए सबसे उपयुक्त विकल्प का चयन करें।

- Ans
- 1. कि
  - 2. की
  - 3. कई
  - 4. मिश्र में

Question ID : 264330110939

Status : Not Answered

Chosen Option : --

**Comprehension:**

निम्नलिखित गद्यांश में कुछ शब्दों को हटा दिया गया है। दिए गए विकल्पों की सहायता से रिक्त स्थानों की पूर्ति कीजिए।

एक बार 1. \_\_\_\_\_ बात है। मैं दिल्ली 2. \_\_\_\_\_ आगरा जा रहा था। जब मैं 3. \_\_\_\_\_ पर पहुंचा तो गाड़ी चलने वाली थी। मुझे उस गाड़ी में जाना अवश्य था, अतः बिना 4. \_\_\_\_\_ लिए एक डिब्बे में चढ़ गया। अभी एक स्टेशन ही निकला था कि डिब्बे में 5. \_\_\_\_\_ आ गया।

SubQuestion No : 17

Q.17 रिक्त स्थान 2 की पूर्ति के लिए सबसे उपयुक्त विकल्प का चयन करें।

- Ans
- 1. पर
  - 2. से
  - 3. में
  - 4. को

Question ID : 264330110940

Status : Not Answered

Chosen Option : --



**Comprehension:**

निम्नलिखित गद्यांश में कुछ शब्दों को हटा दिया गया है। दिए गए विकल्पों की सहायता से रिक्त स्थानों की पूर्ति कीजिए।

एक बार 1. \_\_\_\_\_ बात है। मैं दिल्ली 2. \_\_\_\_\_ आगरा जा रहा था। जब मैं 3. \_\_\_\_\_ पर पहुंचा तो गाड़ी चलने वाली थी। मुझे उस गाड़ी में जाना अवश्य था, अतः बिना 4. \_\_\_\_\_ लिए एक डिब्बे में चढ़ गया। अभी एक स्टेशन ही निकला था कि डिब्बे में 5. \_\_\_\_\_ आ गया।

**SubQuestion No : 18**

Q.18 रिक्त स्थान 3 की पूर्ति के लिए सबसे उपयुक्त विकल्प का चयन करें।

- Ans
- 1. मुंबई
  - 2. हवाई अड्डे
  - 3. स्टेशन
  - 4. मध्य प्रदेश

Question ID : 264330110941

Status : Not Answered

Chosen Option : --

**Comprehension:**

निम्नलिखित गद्यांश में कुछ शब्दों को हटा दिया गया है। दिए गए विकल्पों की सहायता से रिक्त स्थानों की पूर्ति कीजिए।

एक बार 1. \_\_\_\_\_ बात है। मैं दिल्ली 2. \_\_\_\_\_ आगरा जा रहा था। जब मैं 3. \_\_\_\_\_ पर पहुंचा तो गाड़ी चलने वाली थी। मुझे उस गाड़ी में जाना अवश्य था, अतः बिना 4. \_\_\_\_\_ लिए एक डिब्बे में चढ़ गया। अभी एक स्टेशन ही निकला था कि डिब्बे में 5. \_\_\_\_\_ आ गया।

**SubQuestion No : 19**

Q.19 रिक्त स्थान 4 की पूर्ति के लिए सबसे उपयुक्त विकल्प का चयन करें।

- Ans
- 1. पैसे
  - 2. धन
  - 3. सामान
  - 4. टिकट

Question ID : 264330110942

Status : Not Answered

Chosen Option : --

**Comprehension:**

निम्नलिखित गद्यांश में कुछ शब्दों को हटा दिया गया है। दिए गए विकल्पों की सहायता से रिक्त स्थानों की पूर्ति कीजिए।

एक बार 1. \_\_\_\_\_ बात है। मैं दिल्ली 2. \_\_\_\_\_ आगरा जा रहा था। जब मैं 3. \_\_\_\_\_ पर पहुंचा तो गाड़ी चलने वाली थी। मुझे उस गाड़ी में जाना अवश्य था, अतः बिना 4. \_\_\_\_\_ लिए एक डिब्बे में चढ़ गया। अभी एक स्टेशन ही निकला था कि डिब्बे में 5. \_\_\_\_\_ आ गया।

**SubQuestion No : 20**

Q.20 रिक्त स्थान 5 की पूर्ति के लिए सबसे उपयुक्त विकल्प का चयन करें।

- Ans
- 1. डॉक्टर
  - 2. टी.टी
  - 3. ड्राईवर
  - 4. चालक

Question ID : 264330110943

Status : Not Answered

Chosen Option : --

# Constable GD in CAPFs SSF Rifleman GD in Assam Rifles and Sepoy in NCB Examination 2022

Roll Number	<b>KD Job Updates</b>
Candidate Name	<b>KD Job Updates</b>
Venue Name	TCS Gito Bitan
Exam Date	13/01/2023
Exam Time	11:45 AM - 12:45 PM
Subject	Constable GD Examination 2022

Section : **Part-A-General Intelligence and Reasoning**

**Q.1** Which of the following numbers will replace the question mark (?) in the given series?  
9, 17, ?, 57, 89, 129

- Ans
- 1. 23
  - 2. 33
  - 3. 20
  - 4. 35

Question ID : **26433090064**  
Status : **Answered**  
Chosen Option : **2**

**Q.2** Which letter cluster will replace the question mark (?) to complete the given series?  
YAFU, CRRE, ?, KZPY, OQBI

- Ans
- 1. FMBR
  - 2. FYWD
  - 3. GIDO
  - 4. GRXO

Question ID : **26433079430**  
Status : **Answered**  
Chosen Option : **3**

**Q.3** Eight people, A, B, C, D, E, F, G and H are sitting in a straight line, facing north. Only three people sit to the right of A. Only one person sits between A and B. Only four people sit between B and D. F sits to the immediate right of D. C is neither an immediate neighbour of B nor D. E sits second to the right of G. How many people sit between H and A?

- Ans
- 1. None
  - 2. Two
  - 3. Three
  - 4. One

Question ID : **26433092756**  
Status : **Answered**  
Chosen Option : **3**

Q.4 In a certain code language, the word 'FORM' is numerically coded as 25. The word 'SUIT' is numerically coded as 96. How is the word 'RING' numerically coded in the same code language?

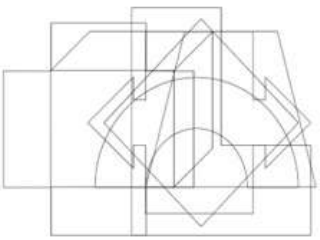
- Ans
- 1. 24
  - 2. 84
  - 3. 42
  - 4. 48

Question ID : 26433090110

Status : **Not Attempted and Marked For Review**

Chosen Option : --

Q.5 Select the option figure which is embedded in the given figure. (Rotation is NOT allowed)



Ans

- 1.
- 2.
- 3.
- 4.

Question ID : 26433085750

Status : **Answered**

Chosen Option : 3

Q.6 Which two signs should be interchanged to make the below equation mathematically correct?

$$128 - 8 + 96 \div 16 \times 20 = 16$$

- Ans
- 1.  $\times$  and  $\div$
  - 2.  $-$  and  $+$
  - 3.  $-$  and  $\times$
  - 4.  $+$  and  $\div$

Question ID : 264330117567  
Status : Answered  
Chosen Option : 2

Q.7 Which of the following numbers will replace the question mark (?) in the given series?  
4, 9, 17, 35, ?, 139

- Ans
- 1. 96
  - 2. 69
  - 3. 71
  - 4. 70

Question ID : 26433085644  
Status : Not Answered  
Chosen Option : --

Q.8 In a certain code language, 'FRUIT' is written as 'HTUKV' and 'TWEAK' is written as 'VYECM'. How will 'VOWEL' be written in that language?

- Ans
- 1. QXWMG
  - 2. QXWGM
  - 3. XQWGN
  - 4. XQGWM

Question ID : 26433068895  
Status : Answered  
Chosen Option : 3

Q.9 Three statements are given followed by three conclusions numbered I, II and III. Assuming the statements to be true, even if they seem to be at variance with commonly known facts, decide which of the conclusions logically follow(s) from the statements.

Statements:

All waters are inks.

All glues are inks.

All inks are pens.

Conclusions:

I. All glues are pens.

II. All pens are waters.

III. Some pens are glues.

- Ans
- 1. Only conclusions I and II follow
  - 2. Only conclusions I and III follow
  - 3. All conclusions follow
  - 4. Only conclusions II and III follow

Question ID : 26433082299  
Status : Answered  
Chosen Option : 2

Q.10 'A + B' means 'A is the wife of B'  
'A - B' means 'A is the husband of B'  
'A × B' means 'A is the brother of B'  
'A ÷ B' means 'A is the mother of B'  
If  $R + T \times S - P \div Q + N$ , then which of the following statements is NOT correct?

- Ans
- 1. Q is the mother of T.
  - 2. P is the mother of Q.
  - 3. T is the brother of S.
  - 4. R is the wife of T.

Question ID : 26433090048  
Status : Answered  
Chosen Option : 2

Q.11 Select the option that is related to the third number in the same way as the second number is related to the first number and the sixth number is related to the fifth number.  
4 : 30 :: 7 : ? :: 6 : 56

- Ans
- 1. 72
  - 2. 76
  - 3. 70
  - 4. 80

Question ID : 26433067897  
Status : Answered  
Chosen Option : 1

Q.12 Select the option that is related to the third word in the same way as the second word is related to the first word.  
(The words must be considered as meaningful English words and must NOT be related to each other based on the number of letters/number of consonants/vowels in the word)  
Bat : Cricket :: Racquet : ?

- Ans
- 1. Golf
  - 2. Baseball
  - 3. Tennis
  - 4. Hockey

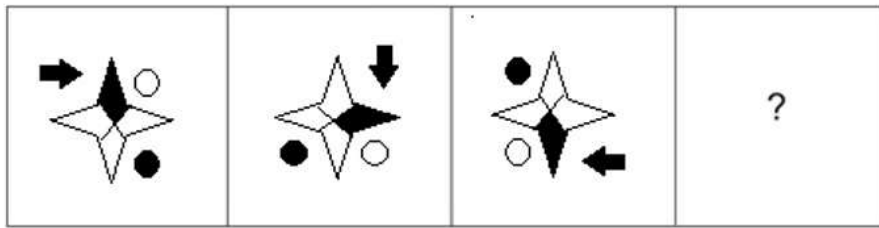
Question ID : 26433087198  
Status : Answered  
Chosen Option : 3

Q.13 Which of the following terms will replace the question mark (?) in the given series?  
FPA, HSB, IVD, KYE, ?, NEH

- Ans
- 1. MAG
  - 2. MBG
  - 3. LBG
  - 4. LAH

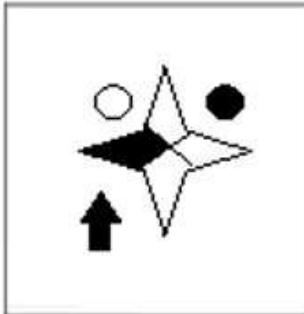
Question ID : 26433069456  
Status : Answered  
Chosen Option : 3

Q.14 Select the figure that will come next in the following figure series.

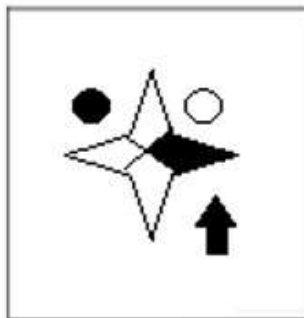


Ans

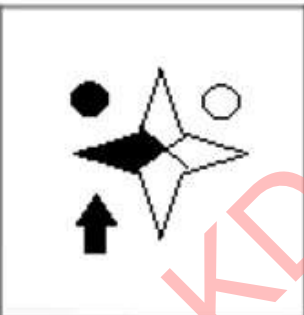
✓ 1.



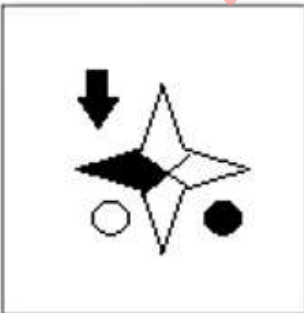
✗ 2.



✗ 3.



✗ 4.



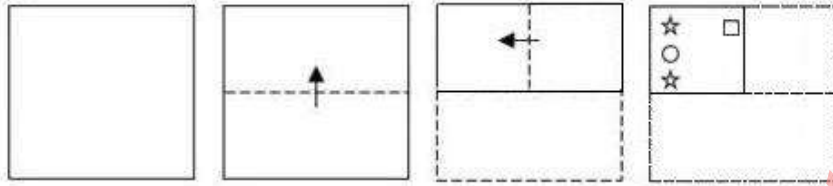
Question ID : 26433083100  
Status : Answered  
Chosen Option : 1

Q.15 'Expand' is related to 'Stretch' in the same way as 'Contract' is related to '\_\_\_\_\_'.  
 (The words must be considered as meaningful English words and must not be related to each other based on the number of letters/number of consonants/vowels in the word)

- Ans  1. Shrink  
 2. Volume  
 3. Huge  
 4. Range

Question ID : 26433057750  
 Status : Answered  
 Chosen Option : 4

Q.16 A paper is folded and cut as shown below. How will it appear when unfolded?



- Ans
- 1.
- 2.
- 3.
- 4.

Question ID : 26433090957  
 Status : Answered  
 Chosen Option : 2

Q.17 Select the correct mirror image of the given combination when the mirror is placed at 'PQ' as shown below.

& @ 5436 ARE | P  
Q

Ans

- 1. & @ 5436 ARE
- 2. & @ 5486 ARE
- 3. & @ 5236 ARE
- 4. & @ 5436 ARE

Question ID : 26433082744

Status : Answered

Chosen Option : 4

Q.18 Ten friends went to a restaurant to have their lunch and sat in two parallel rows facing each other, such that five members are sitting in each row. K, L, M, N, O are sitting in Row 1 facing north, while persons F, G, H, I, J in Row 2 face south. N is facing the neighbour of J. Two persons sit between J and H. I sits in the middle of the line. G does not sit at any of the corners; G is neither facing M nor K. K sits to the left of M but not immediate left. J is the immediate neighbour of the person who is sitting at the corner. N does not sit at any of the corners. L is sitting second to the left of N. How many persons are sitting between J and G?

- Ans
- 1. Zero
  - 2. One
  - 3. Two
  - 4. Three

Question ID : 26433079070

Status : Not Attempted and Marked For Review

Chosen Option : --



Q.19 Which option represents the correct order of the given words as they would appear in an English dictionary?

1. MISTER
2. MASTER
3. MARTYR
4. MISTRESS
5. MARTHA

- Ans
- 1. 3, 5, 2, 1, 4
  - 2. 3, 5, 1, 2, 4
  - 3. 5, 3, 1, 2, 4
  - 4. 5, 3, 2, 1, 4

Question ID : 26433092546

Status : Answered

Chosen Option : 4

Q.20 Select the correct combination of mathematical signs to sequentially replace the \* signs and to balance the given equation.

$$64 * 140 * 2 * 4 * 10$$

- Ans
- 1. +, -, =, ÷
  - 2. =, ÷, -, +
  - 3. -, +, ÷, =
  - 4. =, ÷, +, -

Question ID : 26433094996

Status : Answered

Chosen Option : 4

Section : Part-B-General Knowledge and General awareness

Q.1 The Industrial Policy Resolution, 1956 classified the industries into \_\_\_\_\_ categories.

- Ans
- 1. two
  - 2. three
  - 3. four
  - 4. one

Question ID : 264330116144

Status : Not Answered

Chosen Option : --

Q.2 A Feature of Indian constitution i.e. Centrifugal form of federalism where the centre is stronger than the states is based on which model?

- Ans
- 1. Canadian model
  - 2. Britain model
  - 3. Japan model
  - 4. USA model

Question ID : 26433090676

Status : Answered

Chosen Option : 2

**Q.3** Sonal Mansingh was awarded the Sangeet Natak Akademi Award for which of the following classical dance forms?

- Ans
- 1. Mohiniyattam
  - 2. Manipuri
  - 3. Odissi
  - 4. Kathakali

Question ID : 26433074076  
Status : Answered  
Chosen Option : 1

**Q.4** What is the literacy rate among the males in India as per the Census 2011?

- Ans
- 1. 80.65%
  - 2. 82.14%
  - 3. 81.17%
  - 4. 84.35%

Question ID : 264330116058  
Status : Not Answered  
Chosen Option : --

**Q.5** Atal Pension Yojana (APY), a pension scheme for citizens of India, is focused on the \_\_\_\_\_ sector workers.

- Ans
- 1. unspecified
  - 2. unorganised
  - 3. organised
  - 4. complicated

Question ID : 264330116195  
Status : Not Answered  
Chosen Option : --

**Q.6** What is the standard height of a volleyball net from the ground for the men's team?

- Ans
- 1. 2.53 metres
  - 2. 2.43 metres
  - 3. 2.23 metres
  - 4. 2.33 metres

Question ID : 26433096229  
Status : Not Answered  
Chosen Option : --

**Q.7 Which scheme has been proposed for development of state roads along coastal border areas, including connectivity of non major ports and major ports?**

- Ans
- 1. Setubharatam Pariyojana
  - 2. National Highways Development Project
  - 3. The Golden Quadrilateral Project
  - 4. Sagarmala Pariyojana

Question ID : 264330115601  
Status : Answered  
Chosen Option : 1

**Q.8 Bhopal lake, one of the largest artificial lake of its time was built in which century?**

- Ans
- 1. 11<sup>th</sup>
  - 2. 13<sup>th</sup>
  - 3. 15<sup>th</sup>
  - 4. 19<sup>th</sup>

Question ID : 26433091499  
Status : Not Answered  
Chosen Option : --

**Q.9 Which of the following is not present in a nucleus?**

- Ans
- 1. nucleolus
  - 2. vacuole
  - 3. deoxyribonucleic acid
  - 4. genes

Question ID : 264330115191  
Status : Not Answered  
Chosen Option : --

**Q.10 Which of the following acts passed by the Britishers disallowed Indians from possessing arms?**

- Ans
- 1. The Arms Act, 1878
  - 2. The Arms Act, 1868
  - 3. The Arms Act, 1888
  - 4. The Arms Act, 1850

Question ID : 26433089901  
Status : Not Answered  
Chosen Option : --

Q.11 Who among the following has won the Balasaraswathi award for the year 2019?

- Ans  1. Krishna Ella  
 2. Anuradha Pandey  
 3. Alarmel Valli  
 4. Mahaboob Subhani

Question ID : 264330115849  
Status : Not Answered  
Chosen Option : --

Q.12 Who was appointed as the new Chairman of CBSE in February 2022?

- Ans  1. Prof Dinesh Prasad Saklani  
 2. Prof M Jagadesh Kumar  
 3. Vineet Joshi  
 4. Rajkumar Ranjan Singh

Question ID : 26433081826  
Status : Not Answered  
Chosen Option : --

Q.13 Who among the following was the first ruler of the Sunga dynasty?

- Ans  1. Parammitra Sunga  
 2. Pushyamitra Sunga  
 3. Parasmitra Sunga  
 4. Pashupatinath Sunga

Question ID : 26433090575  
Status : Answered  
Chosen Option : 2

Q.14 As of November 2022, who among the following is the Chief Minister of Delhi?

- Ans  1. V. Narayanaswamy  
 2. Arvind Kejriwal  
 3. Pema Khandu  
 4. Manoj Sinha

Question ID : 264330114974  
Status : Answered  
Chosen Option : 2

Q.15 Per capita income for a nation is calculated by dividing the country's national income by its \_\_\_\_\_.

- Ans  1. liability  
 2. debt  
 3. assets  
 4. population

Question ID : 264330115354  
Status : Not Answered  
Chosen Option : --

**Q.16** From which among the following countries Independence of judiciary has been borrowed in the Indian Constitution ?

- Ans
- 1. France
  - 2. USSR
  - 3. United Kingdom
  - 4. United States Of America

Question ID : 26433090669  
Status : Answered  
Chosen Option : 3

**Q.17** Eden Gardens cricket ground is located in which of the following city?

- Ans
- 1. Chennai
  - 2. Lucknow
  - 3. Jaipur
  - 4. Kolkata

Question ID : 264330116263  
Status : Answered  
Chosen Option : 4

**Q.18** Sodium is kept in which of the following?

- Ans
- 1. Kerosene
  - 2. Water
  - 3. Milk
  - 4. Sugar solution

Question ID : 26433089650  
Status : Answered  
Chosen Option : 1

**Q.19** Karkidaka Vavu Bali of \_\_\_\_\_ is a Hindu ritual to appease ancestors.

- Ans
- 1. Kerala
  - 2. Maharashtra
  - 3. Meghalaya
  - 4. Goa

Question ID : 264330106220  
Status : Not Answered  
Chosen Option : --

Q.20 Green Revolution was originated in \_\_\_\_\_.

- Ans
- 1. Brazil
  - 2. Australia
  - 3. Mexico
  - 4. United State of America

Question ID : 264330115436  
Status : Not Answered  
Chosen Option : --

Section : Part-C-Elementary Mathematics

Q.1 In March, a shopkeeper has launched a discount scheme for 20% discount on the purchase of jeans and 12% discount on a coat. Also, he is offering 5% discount on using SBI card only to pay. Anand bought jeans of marked price of Rs.1,200 and a coat of marked price of Rs.4,500. How much does he have to pay if he pays through an HDFC Bank card?

- Ans
- 1. Rs.4,920
  - 2. Rs.4,560
  - 3. Rs.4,674
  - 4. Rs.5,016

Question ID : 26433080391  
Status : Answered  
Chosen Option : 1

Q.2 Akhil can complete a piece of work in 26 days. Sakshi and Akhil both can complete the same work in 20 days. They started together but Sakshi left after working for 6 days. Find the number of days in which Akhil will complete the remaining work.

- Ans
- 1.  $55/4$  days
  - 2.  $89/5$  days
  - 3.  $12/5$  days
  - 4.  $91/5$  days

Question ID : 264330116879  
Status : Answered  
Chosen Option : 4

Q.3 If 24 women can complete a work in 16 days, in how many days 32 women will complete the same work?

- Ans
- 1. 11
  - 2. 9
  - 3. 12
  - 4. 10

Question ID : 26433080331  
Status : Answered  
Chosen Option : 3

Q.4 A dog takes 5 leaps for every 6 leaps of a hare, but 4 leaps of the dog are equal to 5 leaps of the hare. The ratio of the speed of dog and hare is?

- Ans
- 1. 16 : 24
  - 2. 24 : 16
  - 3. 25 : 24
  - 4. 24 : 25

Question ID : 26433076381  
Status : Answered  
Chosen Option : 4

Q.5 In what ratio must water be mixed with milk costing Rs.15 per liter to obtain a mixture worth Rs.10 per liter? (water is available free of cost)

- Ans
- 1. 1 : 2
  - 2. 1 : 3
  - 3. 2 : 5
  - 4. 2 : 3

Question ID : 26433082707  
Status : Answered  
Chosen Option : 1

Q.6 If the radius of the base and the height of a cylinder are 17cm and 49 cm respectively, then what is the curved surface area of the cylinder? (Use  $\pi = 22/7$ )

- Ans
- 1. 5244 cm<sup>2</sup>
  - 2. 5256 cm<sup>2</sup>
  - 3. 5288 cm<sup>2</sup>
  - 4. 5236 cm<sup>2</sup>

Question ID : 26433075710  
Status : Answered  
Chosen Option : 4

Q.7 If a person weighing 40 kg joins, then the average weight of a group increases by 1 kg. If the weight of this person had been 28 kg, then the average weight of the group would have decreased by 1 kg. The actual average weight of the group is:

- Ans
- 1. 39 kg
  - 2. 24 kg
  - 3. 34 kg
  - 4. 29 kg

Question ID : 26433087346  
Status : Not Attempted and Marked For Review  
Chosen Option : --

Q.8 Cost of four chairs is equal to cost of two tables. Cost of four tables is equal to cost of two boards and cost of four boards is equal to cost of two fans. If a fan costs ₹850, then the cost of a chair is:

Ans

✗ 1. ₹425

✗ 2. ₹237.50

✓ 3. ₹106.25

✗ 4. ₹475

Question ID : 26433081565

Status : Answered

Chosen Option : 3

Q.9 A principal gives an amount of ₹26,450 in 2 years at the rate of 15% per annum on compound interest, interest is compounding annually. What is the principal?

Ans

✗ 1. ₹23,000

✓ 2. ₹20,000

✗ 3. ₹21,000

✗ 4. ₹22,000

Question ID : 26433091994

Status : Answered

Chosen Option : 2

Q.10 Find the value of  $y$  in the expression  $2\frac{3}{7} \times \left[ \left( 11\frac{2}{6} \div \left( \frac{25}{18} + 2\frac{5}{6} - \frac{7}{36} \right) \right) \right] = y \div 72.5 \times 204$ .

Ans

✗ 1.  $\frac{21}{5}$

✗ 2.  $\frac{19}{3}$

✓ 3.  $\frac{17}{7}$

✗ 4.  $\frac{15}{2}$

Question ID : 26433086266

Status : Not Attempted and Marked For Review

Chosen Option : --



Q.11 The distance 'd' a moving body travels, varies directly with time 't'. When a train travels 120 miles in 3 h, then how many miles would it travel in 8 h?

- Ans
- 1. 40
  - 2. 320
  - 3. 80
  - 4. 160

Question ID : 26433081581  
Status : Answered  
Chosen Option : 2

Q.12 If the simple interest on a sum of money for two years at 5% per annum is Rs.50, then what is the compound interest when compounding annually at the same rate and for the same time?

- Ans
- 1. Rs.53.00
  - 2. Rs.50.50
  - 3. Rs.53.50
  - 4. Rs.51.25

Question ID : 26433065291  
Status : Answered  
Chosen Option : 4

Q.13 A toy car costs Rs. 1800. Its price is reduced to Rs. 1500 in the sale. By what percentage was the price reduced?

- Ans
- 1. 60/7 percent
  - 2. 80/9 percent
  - 3. 100/7 percent
  - 4. 50/3 percent

Question ID : 264330116799  
Status : Answered  
Chosen Option : 4

Q.14 The LCM of the three numbers 120, 240 and 480 will be:

- Ans
- 1. 720
  - 2. 1080
  - 3. 960
  - 4. 480

Question ID : 26433091513  
Status : Answered  
Chosen Option : 4

Q.15 A thief is noticed by a policeman from a distance of 380 m. The thief starts running and the policeman chases him. The thief and policeman run at the speed of 25 m/sec and 30 m/sec respectively. What is the time taken by the policeman to catch the thief?

- Ans
- 1. 82 sec
  - 2. 56 sec
  - 3. 92 sec
  - 4. 76 sec

Question ID : 26433076402  
Status : Answered  
Chosen Option : 4

Q.16 A shopkeeper decided the price of 2 sarees and 4 shirts to be ₹1,600. With the same money one can buy 1 saree and 6 shirts. If I want to buy 12 shirts how much shall I have to pay?

- Ans
- 1. ₹4,800
  - 2. ₹2,400
  - 3. ₹1,600
  - 4. ₹1,800

Question ID : 26433075877  
Status : Answered  
Chosen Option : 2

Q.17 In an examination, there are three subjects of 100 marks each. A student scores 75% in the first subject and 86% in the second subject. He scored 68% in aggregate. His percentage of marks in the third subject is:

- Ans
- 1. 65%
  - 2. 48%
  - 3. 56%
  - 4. 43%

Question ID : 26433081013  
Status : Answered  
Chosen Option : 4

Q.18 Find the number of solid spheres, each of diameter 6 cm, that can be made by melting a solid metal cylinder of height 12 cm and diameter 6 cm.

- Ans
- 1. 6
  - 2. 3
  - 3. 4
  - 4. 2

Question ID : 26433080063  
Status : Answered  
Chosen Option : 3

**Q.19** A and B are two typists. One afternoon, they were each given 80 pages for typing. They divided the work equally, but B finished 40 minutes before A, who took 4 hours for the same. The next afternoon, they were again given 121 pages to type. However, this time they decided to divide the work such that they finished typing simultaneously. How many pages did A have to type?

- Ans
- 1. 50 pages
  - 2. 77 pages
  - 3. 60 pages
  - 4. 55 pages

Question ID : 26433081047

Status : **Not Attempted and Marked For Review**

Chosen Option : --

**Q.20** Tina gets a discount of 15 percent on a grinder whose marked price is Rs. 8200. Since she pays cash, she gets an additional 3 percent discount too. How much does she pay?

- Ans
- 1. Rs. 6850.80
  - 2. Rs. 6760.90
  - 3. Rs. 6970
  - 4. Rs. 6560

Question ID : 264330116764

Status : **Answered**

Chosen Option : 2

Section : **Part-D-English**

**Q.1** Select the most appropriate meaning of the given idiom.

**Add fuel to the flames**

- Ans
- 1. On the point of dying
  - 2. At the slightest signal or provocation
  - 3. Making a bad situation even worse
  - 4. Performing a desirable action

Question ID : 26433086431

Status : **Not Answered**

Chosen Option : --

**Q.2** Fill in the blanks with appropriate homonym.

If you want to \_\_\_\_\_ the world, you should be the one to take the first step.

- Ans
- 1. change (loose money)
  - 2. change (transfer)
  - 3. change (switch)
  - 4. change (alter)

Question ID : 26433092932

Status : **Answered**

Chosen Option : 4

**Q.3** Select the most appropriate synonym of the word given below to fill in the blank in the following sentence.

**Austere**

My uncle said, "Think about a monk who lives a \_\_\_\_\_ life".

- Ans
- 1. dark
  - 2. luxurious
  - 3. strict
  - 4. logical

Question ID : 26433093261  
Status : Answered  
Chosen Option : 1

**Q.4** Select the most appropriate option to fill in the blank.

Affluent classes live a life high on the \_\_\_\_\_.

- Ans
- 1. end
  - 2. state
  - 3. hog
  - 4. level

Question ID : 26433073214  
Status : Answered  
Chosen Option : 2

**Q.5** Select the most appropriate option to fill in the blank.

Computers are able to process \_\_\_\_\_ amounts of data in mere seconds.

- Ans
- 1. peer
  - 2. bulge
  - 3. massive
  - 4. foster

Question ID : 26433060335  
Status : Not Answered  
Chosen Option : --

**Q.6** Select the INCORRECTLY spelt word.

- Ans
- 1. Deseive
  - 2. Definite
  - 3. Decision
  - 4. Deposit

Question ID : 26433073926  
Status : Answered  
Chosen Option : 3

**Q.7** Select the most appropriate option to substitute the underlined segment in the given sentence.

The surveyor wrote a report on the property after doing an on-field evaluation.

- Ans
- 1. official collection
  - 2. off-site assignment
  - 3. off-field tracking
  - 4. on-site assessment

Question ID : 26433092915  
Status : Not Answered  
Chosen Option : --

**Q.8** Select the most appropriate option that can substitute the underlined segment in the given sentence.

During the lockdown, many families were barely able to make both the ends meet.

- Ans
- 1. can manage to make both the ends meet
  - 2. could make both the ends meet
  - 3. barely managed to make ends meet
  - 4. were making both the ends meet

Question ID : 26433094277  
Status : Not Answered  
Chosen Option : --

**Q.9** Select the most appropriate option to fill in the blank.

The students arranged an open \_\_\_\_\_ on the topic of pandemics and social life after them.

- Ans
- 1. drought
  - 2. debase
  - 3. debt
  - 4. debate

Question ID : 26433073785  
Status : Answered  
Chosen Option : 4

**Q.10** Which of the following options is most similar in meaning to the given word?  
Seize

- Ans
- 1. Filter
  - 2. End
  - 3. Ocean
  - 4. Catch

Question ID : 26433088811  
Status : Answered  
Chosen Option : 4

Q.11 Select the option that expresses the given sentence in simple past tense.

- A. I was calling you some time back to resolve this issue.
- B. I had been calling you some time back to resolve this issue.
- C. I have called you some time back to resolve this issue.
- D. I called you some time back to resolve this issue.

- Ans
- 1. A
  - 2. C
  - 3. B
  - 4. D

Question ID : 26433073519  
Status : Not Answered  
Chosen Option : --

Q.12 Select the most appropriate ANTONYM of the given word.

Ready

- Ans
- 1. Set
  - 2. Unresponsive
  - 3. Holistic
  - 4. Humble

Question ID : 26433072419  
Status : Answered  
Chosen Option : 2

Q.13 Select the most appropriate option that can substitute the underlined segment in the given sentence.

To insure peace and calm, the government imposed a countrywide curfew for three days.

- Ans
- 1. To insure peace along calm
  - 2. In to ensure peace and calm
  - 3. To ensure peace and calm
  - 4. Insure peace and calm

Question ID : 26433091769  
Status : Not Answered  
Chosen Option : --

Q.14 Select the most appropriate synonym of the underlined word.

The manager would like to talk to the team member about an important issue immediately.

- Ans
- 1. a bad
  - 2. an enormous
  - 3. a good
  - 4. a significant

Question ID : 26433089001  
Status : Answered  
Chosen Option : 4

**Q.15 Select the most appropriate ANTONYM of the word given in the bracket to fill in the blank.**

He carried his method into every detail of life and lived on his earnings with extreme \_\_\_\_\_ (frugality).

- Ans
- 1. luxury
  - 2. spare
  - 3. assist
  - 4. ease

Question ID : 26433060327

Status : Not Answered

Chosen Option : --

**Comprehension:**

In the following passage, some words have been deleted. Read the passage carefully and select the most appropriate option to fill in each blank.

It's no less than a pilgrimage for those who come to our shores for medical treatments. Medical tourism in India is on an upswing, with about 5,00,000 foreign patients travelling to India for medical care. The (1) \_\_\_\_\_ worth of the industry is estimated at ₹1,000 crores, with a growth potential of 100 per cent every year. The industry is poised to bring in as much as ₹5,000 to ₹10,000 crores by 2012.

Many factors contribute to the expansion of this sector, one of them being the (2) \_\_\_\_\_ facilities. "Only when we go to different countries do we realise how much better off we are in terms of infrastructure and quality. The country has the resources to be on the global map for medical tourism as it has a combination of all the right ingredients," says Dr. Rajendra Prasad, senior consultancy neurosurgery.

India is also renowned for its talent pool and the doctors are known for their (3) \_\_\_\_\_ and knowledge. Cutting edge medical technologies and drugs available are on a par with the developed world. The cost factor is another big reason for the popularity of India as the medical destination, the difference being as much as 10 or 20 times.

The culture of 'Atithi Devo Bhava' extends into medical tourism, with quality facilities being offered by hospitals to international patients. Super speciality hospitals are successfully providing unparalleled medical treatment to patients, resulting in (4) \_\_\_\_\_ outcomes, very low risk of infections and excellent post surgery care. The whole experience can be simply termed as 'value for money'.

Medical tourism is (5) \_\_\_\_\_ a fast-growing sector. It is felt that the government is not doing enough to promote this sector. The Ministry of Tourism should pitch in a big way with more financial support to stakeholders and better infrastructure facilities. More liberal loans, tax benefits and incentives to medical service providers will go a long way in giving a boost to this industry. Promoting medical tourism would mean more employment opportunities for our people, more goodwill for the country and more dollars for the government treasury.

**SubQuestion No : 16**

**Q.16 Select the most appropriate option to fill in blank number 1.**

- Ans
- 1. current
  - 2. living
  - 3. prevalent
  - 4. modern

Question ID : 26433097072

Status : Not Answered

Chosen Option : --

### Comprehension:

In the following passage, some words have been deleted. Read the passage carefully and select the most appropriate option to fill in each blank.

It's no less than a pilgrimage for those who come to our shores for medical treatments. Medical tourism in India is on an upswing, with about 5,00,000 foreign patients travelling to India for medical care. The (1) \_\_\_\_\_ worth of the industry is estimated at ₹1,000 crores, with a growth potential of 100 per cent every year. The industry is poised to bring in as much as ₹5,000 to ₹10,000 crores by 2012.

Many factors contribute to the expansion of this sector, one of them being the (2) \_\_\_\_\_ facilities. "Only when we go to different countries do we realise how much better off we are in terms of infrastructure and quality. The country has the resources to be on the global map for medical tourism as it has a combination of all the right ingredients," says Dr. Rajendra Prasad, senior consultancy neurosurgery.

India is also renowned for its talent pool and the doctors are known for their (3) \_\_\_\_\_ and knowledge. Cutting edge medical technologies and drugs available are on a par with the developed world. The cost factor is another big reason for the popularity of India as the medical destination, the difference being as much as 10 or 20 times.

The culture of 'Atithi Devo Bhava' extends into medical tourism, with quality facilities being offered by hospitals to international patients. Super speciality hospitals are successfully providing unparalleled medical treatment to patients, resulting in (4) \_\_\_\_\_ outcomes, very low risk of infections and excellent post surgery care. The whole experience can be simply termed as 'value for money'.

Medical tourism is (5) \_\_\_\_\_ a fast-growing sector. It is felt that the government is not doing enough to promote this sector. The Ministry of Tourism should pitch in a big way with more financial support to stakeholders and better infrastructure facilities. More liberal loans, tax benefits and incentives to medical service providers will go a long way in giving a boost to this industry. Promoting medical tourism would mean more employment opportunities for our people, more goodwill for the country and more dollars for the government treasury.

### SubQuestion No : 17

Q.17 Select the most appropriate option to fill in blank number 2.

- Ans  1. high-end  
 2. fashionable  
 3. ostentatious  
 4. showy

Question ID : 26433097073

Status : Not Answered

Chosen Option : --



### Comprehension:

In the following passage, some words have been deleted. Read the passage carefully and select the most appropriate option to fill in each blank.

It's no less than a pilgrimage for those who come to our shores for medical treatments. Medical tourism in India is on an upswing, with about 5,00,000 foreign patients travelling to India for medical care. The (1) \_\_\_\_\_ worth of the industry is estimated at ₹1,000 crores, with a growth potential of 100 per cent every year. The industry is poised to bring in as much as ₹5,000 to ₹10,000 crores by 2012.

Many factors contribute to the expansion of this sector, one of them being the (2) \_\_\_\_\_ facilities. "Only when we go to different countries do we realise how much better off we are in terms of infrastructure and quality. The country has the resources to be on the global map for medical tourism as it has a combination of all the right ingredients," says Dr. Rajendra Prasad, senior consultancy neurosurgery.

India is also renowned for its talent pool and the doctors are known for their (3) \_\_\_\_\_ and knowledge. Cutting edge medical technologies and drugs available are on a par with the developed world. The cost factor is another big reason for the popularity of India as the medical destination, the difference being as much as 10 or 20 times.

The culture of 'Atithi Devo Bhava' extends into medical tourism, with quality facilities being offered by hospitals to international patients. Super speciality hospitals are successfully providing unparalleled medical treatment to patients, resulting in (4) \_\_\_\_\_ outcomes, very low risk of infections and excellent post surgery care. The whole experience can be simply termed as 'value for money'.

Medical tourism is (5) \_\_\_\_\_ a fast-growing sector. It is felt that the government is not doing enough to promote this sector. The Ministry of Tourism should pitch in a big way with more financial support to stakeholders and better infrastructure facilities. More liberal loans, tax benefits and incentives to medical service providers will go a long way in giving a boost to this industry. Promoting medical tourism would mean more employment opportunities for our people, more goodwill for the country and more dollars for the government treasury.

### SubQuestion No : 18

Q.18 Select the most appropriate option to fill in blank number 3.

- Ans  1. expertise  
 2. conversance  
 3. acquaintance  
 4. intimacy

Question ID : 26433097074

Status : Not Answered

Chosen Option : --

### Comprehension:

In the following passage, some words have been deleted. Read the passage carefully and select the most appropriate option to fill in each blank.

It's no less than a pilgrimage for those who come to our shores for medical treatments. Medical tourism in India is on an upswing, with about 5,00,000 foreign patients travelling to India for medical care. The (1) \_\_\_\_\_ worth of the industry is estimated at ₹1,000 crores, with a growth potential of 100 per cent every year. The industry is poised to bring in as much as ₹5,000 to ₹10,000 crores by 2012.

Many factors contribute to the expansion of this sector, one of them being the (2) \_\_\_\_\_ facilities. "Only when we go to different countries do we realise how much better off we are in terms of infrastructure and quality. The country has the resources to be on the global map for medical tourism as it has a combination of all the right ingredients," says Dr. Rajendra Prasad, senior consultancy neurosurgery.

India is also renowned for its talent pool and the doctors are known for their (3) \_\_\_\_\_ and knowledge. Cutting edge medical technologies and drugs available are on a par with the developed world. The cost factor is another big reason for the popularity of India as the medical destination, the difference being as much as 10 or 20 times.

The culture of 'Atithi Devo Bhava' extends into medical tourism, with quality facilities being offered by hospitals to international patients. Super speciality hospitals are successfully providing unparalleled medical treatment to patients, resulting in (4) \_\_\_\_\_ outcomes, very low risk of infections and excellent post surgery care. The whole experience can be simply termed as 'value for money'.

Medical tourism is (5) \_\_\_\_\_ a fast-growing sector. It is felt that the government is not doing enough to promote this sector. The Ministry of Tourism should pitch in a big way with more financial support to stakeholders and better infrastructure facilities. More liberal loans, tax benefits and incentives to medical service providers will go a long way in giving a boost to this industry. Promoting medical tourism would mean more employment opportunities for our people, more goodwill for the country and more dollars for the government treasury.

### SubQuestion No : 19

Q.19 Select the most appropriate option to fill in blank number 4.

- Ans  1. fancy  
 2. superior  
 3. ultimate  
 4. premium

Question ID : 26433097075

Status : Not Answered

Chosen Option : --

### Comprehension:

In the following passage, some words have been deleted. Read the passage carefully and select the most appropriate option to fill in each blank.

It's no less than a pilgrimage for those who come to our shores for medical treatments. Medical tourism in India is on an upswing, with about 5,00,000 foreign patients travelling to India for medical care. The (1) \_\_\_\_\_ worth of the industry is estimated at ₹1,000 crores, with a growth potential of 100 per cent every year. The industry is poised to bring in as much as ₹5,000 to ₹10,000 crores by 2012.

Many factors contribute to the expansion of this sector, one of them being the (2) \_\_\_\_\_ facilities. "Only when we go to different countries do we realise how much better off we are in terms of infrastructure and quality. The country has the resources to be on the global map for medical tourism as it has a combination of all the right ingredients," says Dr. Rajendra Prasad, senior consultancy neurosurgery.

India is also renowned for its talent pool and the doctors are known for their (3) \_\_\_\_\_ and knowledge. Cutting edge medical technologies and drugs available are on a par with the developed world. The cost factor is another big reason for the popularity of India as the medical destination, the difference being as much as 10 or 20 times.

The culture of 'Atithi Devo Bhava' extends into medical tourism, with quality facilities being offered by hospitals to international patients. Super speciality hospitals are successfully providing unparalleled medical treatment to patients, resulting in (4) \_\_\_\_\_ outcomes, very low risk of infections and excellent post surgery care. The whole experience can be simply termed as 'value for money'.

Medical tourism is (5) \_\_\_\_\_ a fast-growing sector. It is felt that the government is not doing enough to promote this sector. The Ministry of Tourism should pitch in a big way with more financial support to stakeholders and better infrastructure facilities. More liberal loans, tax benefits and incentives to medical service providers will go a long way in giving a boost to this industry. Promoting medical tourism would mean more employment opportunities for our people, more goodwill for the country and more dollars for the government treasury.

### SubQuestion No : 20

Q.20 Select the most appropriate option to fill in blank number 5.

- Ans  1. undoubtedly  
 2. forsooth  
 3. alright  
 4. conceivably

Question ID : 26433097076

Status : Not Answered

Chosen Option : --

Section : Part-D-Hindi

Q.1 जिसमें शक्ति न हो' वाक्यांश के लिए इनमें से उपयुक्त शब्द कौन-सा है?

- Ans  1. अशक्य  
 2. अशोक  
 3. अशक्त  
 4. शकत

Question ID : 26433066890

Status : Not Answered

Chosen Option : --

Q.2 निम्न में से कौन-सा शब्द 'कमल' शब्द का पर्यायवाची है?

- Ans
- 1. जलद
  - 2. कंचन
  - 3. नीरद
  - 4. राजीव

Question ID : 26433067075  
Status : Not Answered  
Chosen Option : --

Q.3 निम्नलिखित मुहावरे के उचित अर्थ का चयन कीजिए-  
चेहरे पर हवाईयाँ उड़ना

- Ans
- 1. चुप रहना
  - 2. घबराना
  - 3. अचानक गिरना
  - 4. उड़ान भरना

Question ID : 26433065883  
Status : Not Answered  
Chosen Option : --

Q.4 "यह घटना अद्भुत है।"  
उक्त वाक्य में प्रयुक्त 'अद्भुत' के स्थान पर उसके समानार्थी शब्द का प्रयोग निम्न में से किस वाक्य में नहीं किया गया है?

- Ans
- 1. यह घटना विलक्षण है।
  - 2. यह घटना अपूर्व है।
  - 3. यह घटना आश्चर्यजनक है।
  - 4. यह घटना भयानक है।

Question ID : 26433085149  
Status : Not Answered  
Chosen Option : --

Q.5 नीचे दिए गए वाक्य के अशुद्ध भाग का चयन कीजिए।  
अध्यापक ने आपकी अभ्यास पुस्तिका का अवलोकन करके देख लिया है।

- Ans
- 1. लिया है।
  - 2. अभ्यास पुस्तिका का
  - 3. अध्यापक ने आपकी
  - 4. अवलोकन करके देख

Question ID : 26433085084  
Status : Not Answered  
Chosen Option : --

Q.6 'मुझे आप पुराने पते पर पत्र दीजिएगा।' इस वाक्य में 'दीजिएगा' के स्थान पर उपयुक्त शब्द क्या होगा?

- Ans
- 1. आइएगा
  - 2. लीजिएगा
  - 3. भेजिएगा
  - 4. सोचिएगा

Question ID : 26433066800  
Status : Not Answered  
Chosen Option : --

Q.7 निम्नलिखित वाक्य में से अशुद्धि पहचानें।  
आपकी घड़ी में कै बजे हैं?

- Ans
- 1. आपकी
  - 2. बजे
  - 3. घड़ी
  - 4. कै

Question ID : 26433080930  
Status : Not Answered  
Chosen Option : --

Q.8 'राई का \_\_\_\_\_ बनाना।'  
उपरोक्त मुहावरे में रिक्त स्थान की पूर्ति उचित शब्द द्वारा कीजिए।

- Ans
- 1. दीवार
  - 2. घर
  - 3. किला
  - 4. पहाड़

Question ID : 26433069687  
Status : Not Answered  
Chosen Option : --

Q.9 राहुल का बेटा नित उन्नति की ओर अग्रसर है।  
उपरोक्त वाक्य में रेखांकित शब्द का उपयुक्त विलोम शब्द निम्न में से क्या होगा?

- Ans
- 1. अउन्नति
  - 2. अननति
  - 3. पदोन्नति
  - 4. अवनति

Question ID : 26433079637  
Status : Not Answered  
Chosen Option : --

Q.10 'जो स्त्री प्रिय बोलती है', वाक्यांश के लिए एक शब्द \_\_\_\_\_ है।

- Ans
- 1. प्रेयसी
  - 2. कोमलांगी
  - 3. कर्णप्रिय
  - 4. प्रियंवदा

Question ID : 26433062942  
Status : Not Answered  
Chosen Option : --

Q.11 ऊपर की ओर जाने वाला।  
उपरोक्त वाक्यांश के लिए एक शब्द होगा-

- Ans
- 1. अस्ताचल
  - 2. उपही
  - 3. उरक्षत
  - 4. ऊर्ध्वगामी

Question ID : 26433070062  
Status : Not Answered  
Chosen Option : --

Q.12 निम्न में से कौन-सा शब्द 'बिजली' शब्द का पर्यायवाची शब्द नहीं है?

- Ans
- 1. चंचला
  - 2. दामिनी
  - 3. तड़ित
  - 4. तटिनी

Question ID : 26433067081  
Status : Not Answered  
Chosen Option : --

Q.13 निम्नलिखित विकल्पों में से कौन सा एक वाक्य सम्बन्धवाचक सर्वनाम का उदाहरण नहीं है?

- Ans
- 1. जो व्यक्ति आपत्ति में विचलित नहीं होता, वह अवश्य अपनी मंजिल पाता है।
  - 2. यह अच्छा विचार है।
  - 3. जो दूसरों के लिए गड्ढा खोदता है, वह स्वयं उसमें गिरता है।
  - 4. जिसे चोट लगती है, वही पीर समझता है।

Question ID : 26433091241  
Status : Not Answered  
Chosen Option : --

Q.14 निम्नलिखित में से किस विकल्प में सर्वनाम शब्द त्रुटिपूर्ण है?

- Ans  1. उसने अपने माली को काम से निकाल दिया।  
 2. तुम तो बहुत व्यस्त हो।  
 3. हमारे से अब यह सब नहीं होता।  
 4. आप लोग बहुत बड़े आदमी हैं।

Question ID : 26433063003

Status : Not Answered

Chosen Option : --

Q.15 निम्नलिखित में से शुद्ध वाक्य कौन-सा है?

- Ans  1. रमेश आगरे गया था।  
 2. अल्पेश सवेरे जल्दी उठता है।  
 3. राघव अपने मामे के साथ घूमने गया है।  
 4. सीता पटने से आयी है।

Question ID : 26433085139

Status : Not Answered

Chosen Option : --

**Comprehension:**

दिए गए गद्यांश के अनुसार प्रश्न संख्या 1-5 के उत्तर दीजिए।  
पृथ्वी के ऊपर वायुमण्डल के स्ट्रेटोस्फियर में ओज़ोन गैस की एक मोटी परत है। यह धरती के जीवन का रक्षा कवच है जिससे (1) \_\_\_\_\_ से आने वाली हानिकारक (2) \_\_\_\_\_ रोक ली जाती हैं। किंतु पृथ्वी के ऊपर जहरीली गैसों के बादल बढ़ते जाने के कारण सूर्य की अनावश्यक किरणें बाह्य अंतरिक्ष में वर्तित नहीं हो पातीं जिसके कारण पृथ्वी का (3) \_\_\_\_\_ (ग्लोबल वार्मिंग) बढ़ता जा रहा है। इससे छोटे-बड़े सभी द्वीपसमूहों एवं महाद्वीपों के (4) \_\_\_\_\_ क्षेत्रों के डूब जाने का खतरा बढ़ गया है। इसे 'ग्रीन हाउस प्रभाव' कहते हैं। यही स्थिति रही तो मुंबई जैसे महानगर प्रलय की गोद में समा सकते हैं। पृथ्वी पर बढ़ते तापमान के कारण विश्व (5) \_\_\_\_\_ को अमृत एवं पोषक जल प्रदान करने वाले ग्लेशियर या तो लुप्त हो गए हैं या लुप्त होने की ओर बढ़ते जा रहे हैं।

**SubQuestion No : 16**

Q.16 दिए गए शब्दों में से उचित शब्द चुनकर रिक्त स्थान (1) की पूर्ति कीजिए।

- Ans  1. तारामण्डल  
 2. शनि ग्रह  
 3. चंद्रमा  
 4. सूर्य

Question ID : 26433094109

Status : Not Answered

Chosen Option : --

**Comprehension:**

दिए गए गद्यांश के अनुसार प्रश्न संख्या 1-5 के उत्तर दीजिए।  
पृथ्वी के ऊपर वायुमण्डल के स्ट्रेटोस्फियर में ओज़ोन गैस की एक मोटी परत है। यह धरती के जीवन का रक्षा कवच है जिससे (1) \_\_\_\_\_ से आने वाली हानिकारक (2) \_\_\_\_\_ रोक ली जाती हैं। किंतु पृथ्वी के ऊपर ज़हरीली गैसों के बादल बढ़ते जाने के कारण सूर्य की अनावश्यक किरणें बाह्य अंतरिक्ष में वर्तित नहीं हो पातीं जिसके कारण पृथ्वी का (3) \_\_\_\_\_ (ग्लोबल वार्मिंग) बढ़ता जा रहा है। इससे छोटे-बड़े सभी द्वीपसमूहों एवं महाद्वीपों के (4) \_\_\_\_\_ क्षेत्रों के डूब जाने का खतरा बढ़ गया है। इसे 'ग्रीन हाउस प्रभाव' कहते हैं। यही स्थिति रही तो मुंबई जैसे महानगर प्रलय की गोद में समा सकते हैं। पृथ्वी पर बढ़ते तापमान के कारण विश्व (5) \_\_\_\_\_ को अमृत एवं पोषक जल प्रदान करने वाले ग्लेशियर या तो लुप्त हो गए हैं या लुप्त होने की ओर बढ़ते जा रहे हैं।

**SubQuestion No : 17**

Q.17 दिए गए शब्दों में से उचित शब्द चुनकर रिक्त स्थान (2) की पूर्ति कीजिए।

- Ans  1. रौशनी  
 2. किरणें  
 3. तरंगें  
 4. हवाएँ

Question ID : 26433094110

Status : Not Answered

Chosen Option : --

**Comprehension:**

दिए गए गद्यांश के अनुसार प्रश्न संख्या 1-5 के उत्तर दीजिए।  
पृथ्वी के ऊपर वायुमण्डल के स्ट्रेटोस्फियर में ओज़ोन गैस की एक मोटी परत है। यह धरती के जीवन का रक्षा कवच है जिससे (1) \_\_\_\_\_ से आने वाली हानिकारक (2) \_\_\_\_\_ रोक ली जाती हैं। किंतु पृथ्वी के ऊपर ज़हरीली गैसों के बादल बढ़ते जाने के कारण सूर्य की अनावश्यक किरणें बाह्य अंतरिक्ष में वर्तित नहीं हो पातीं जिसके कारण पृथ्वी का (3) \_\_\_\_\_ (ग्लोबल वार्मिंग) बढ़ता जा रहा है। इससे छोटे-बड़े सभी द्वीपसमूहों एवं महाद्वीपों के (4) \_\_\_\_\_ क्षेत्रों के डूब जाने का खतरा बढ़ गया है। इसे 'ग्रीन हाउस प्रभाव' कहते हैं। यही स्थिति रही तो मुंबई जैसे महानगर प्रलय की गोद में समा सकते हैं। पृथ्वी पर बढ़ते तापमान के कारण विश्व (5) \_\_\_\_\_ को अमृत एवं पोषक जल प्रदान करने वाले ग्लेशियर या तो लुप्त हो गए हैं या लुप्त होने की ओर बढ़ते जा रहे हैं।

**SubQuestion No : 18**

Q.18 दिए गए शब्दों में से उचित शब्द चुनकर रिक्त स्थान (3) की पूर्ति कीजिए।

- Ans  1. क्षेत्रफल  
 2. बोझ  
 3. प्रदूषण  
 4. तापमान

Question ID : 26433094111

Status : Not Answered

Chosen Option : --



**Comprehension:**

दिए गए गद्यांश के अनुसार प्रश्न संख्या 1-5 के उत्तर दीजिए।  
पृथ्वी के ऊपर वायुमण्डल के स्ट्रेटोस्फियर में ओज़ोन गैस की एक मोटी परत है। यह धरती के जीवन का रक्षा कवच है जिससे (1) \_\_\_\_\_ से आने वाली हानिकारक (2) \_\_\_\_\_ रोक ली जाती हैं। किंतु पृथ्वी के ऊपर ज़हरीली गैसों के बादल बढ़ते जाने के कारण सूर्य की अनावश्यक किरणें बाह्य अंतरिक्ष में वर्तित नहीं हो पातीं जिसके कारण पृथ्वी का (3) \_\_\_\_\_ (ग्लोबल वार्मिंग) बढ़ता जा रहा है। इससे छोटे-बड़े सभी द्वीपसमूहों एवं महाद्वीपों के (4) \_\_\_\_\_ क्षेत्रों के डूब जाने का खतरा बढ़ गया है। इसे 'ग्रीन हाउस प्रभाव' कहते हैं। यही स्थिति रही तो मुंबई जैसे महानगर प्रलय की गोद में समा सकते हैं। पृथ्वी पर बढ़ते तापमान के कारण विश्व (5) \_\_\_\_\_ को अमृत एवं पोषक जल प्रदान करने वाले ग्लेशियर या तो लुप्त हो गए हैं या लुप्त होने की ओर बढ़ते जा रहे हैं।

**SubQuestion No : 19**

Q.19 दिए गए शब्दों में से उचित शब्द चुनकर रिक्त स्थान (4) की पूर्ति कीजिए।

- Ans
- 1. मैदानी
  - 2. पहाड़ी
  - 3. रेगिस्तानी
  - 4. तटीय

Question ID : 26433094112

Status : Not Answered

Chosen Option : --

**Comprehension:**

दिए गए गद्यांश के अनुसार प्रश्न संख्या 1-5 के उत्तर दीजिए।  
पृथ्वी के ऊपर वायुमण्डल के स्ट्रेटोस्फियर में ओज़ोन गैस की एक मोटी परत है। यह धरती के जीवन का रक्षा कवच है जिससे (1) \_\_\_\_\_ से आने वाली हानिकारक (2) \_\_\_\_\_ रोक ली जाती हैं। किंतु पृथ्वी के ऊपर ज़हरीली गैसों के बादल बढ़ते जाने के कारण सूर्य की अनावश्यक किरणें बाह्य अंतरिक्ष में वर्तित नहीं हो पातीं जिसके कारण पृथ्वी का (3) \_\_\_\_\_ (ग्लोबल वार्मिंग) बढ़ता जा रहा है। इससे छोटे-बड़े सभी द्वीपसमूहों एवं महाद्वीपों के (4) \_\_\_\_\_ क्षेत्रों के डूब जाने का खतरा बढ़ गया है। इसे 'ग्रीन हाउस प्रभाव' कहते हैं। यही स्थिति रही तो मुंबई जैसे महानगर प्रलय की गोद में समा सकते हैं। पृथ्वी पर बढ़ते तापमान के कारण विश्व (5) \_\_\_\_\_ को अमृत एवं पोषक जल प्रदान करने वाले ग्लेशियर या तो लुप्त हो गए हैं या लुप्त होने की ओर बढ़ते जा रहे हैं।

**SubQuestion No : 20**

Q.20 दिए गए शब्दों में से उचित शब्द चुनकर रिक्त स्थान (5) की पूर्ति कीजिए।

- Ans
- 1. सभ्यता
  - 2. बिरादरी
  - 3. परिवेश
  - 4. संस्कृति

Question ID : 26433094113

Status : Not Answered

Chosen Option : --

## Constable GD in CAPFs SSF Rifleman GD in Assam Rifles and Sepoy in NCB Examination 2022

Roll Number	@Qmaths Telegram Channel
Candidate Name	@Qmaths Telegram Channel
Venue Name	Pawan Ganga Educational Centre 1
Exam Date	13/01/2023
Exam Time	2:30 PM - 3:30 PM
Subject	Constable GD Examination 2022

### Section : Part-A-General Intelligence and Reasoning

**Q.1** Read the given statements and conclusions carefully. Assuming that the information given in the statements is true, even if it appears to be at variance with commonly known facts, decide which of the given conclusions logically follow(s) from the statements.

**STATEMENTS:**

A. All pencils are sticks. B. Some sticks are notes.

C. All diaries are notes.

**CONCLUSIONS:**

I. Some notes are diaries. II. Some sticks are pencils.

III. Some diaries are sticks.

- Ans**
- 1. Only conclusion II follows.
  - 2. Only conclusion III follows.
  - 3. Both conclusions I and II follow.
  - 4. Both conclusions I and III follow.

Question ID : 26433081633  
Status : Answered  
Chosen Option : 3

**Q.2** Select the number from among the given options that can replace the question mark (?) in the following series.  
120, 121, 128, 141, 160, ?

- Ans**
- 1. 190
  - 2. 198
  - 3. 180
  - 4. 185

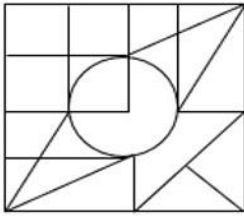
Question ID : 26433078920  
Status : Answered  
Chosen Option : 4

**Q.3** 'A + B' means 'A is the brother of B'  
'A - B' means 'A is the mother of B'  
'A × B' means 'A is the husband of B'  
'A ÷ B' means 'A is the sister of B'  
If  $P \div Q - R + S - T \times U$ , then which of the following statements is NOT correct?

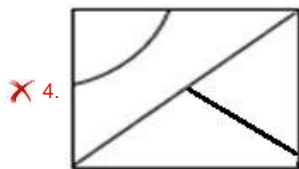
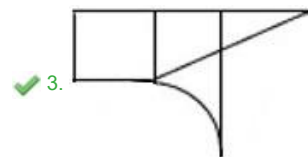
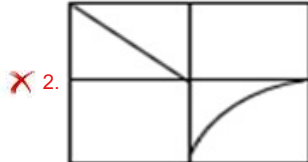
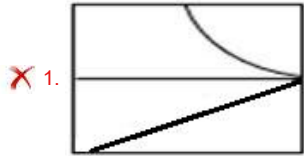
- Ans**
- 1. R is T's mother's brother.
  - 2. P is the mother-in-law of U.
  - 3. Q is the mother of S.
  - 4. P is R's mother's sister.

Question ID : 26433069660  
Status : Not Answered  
Chosen Option : --

Q.4 Select the option figure that is embedded in the given figure (rotation is NOT allowed).



Ans



Question ID : 26433069482  
 Status : Answered  
 Chosen Option : 4

Q.5 Select the correct mirror image of the given combination when the mirror is placed at 'PQ' as shown below.



Ans



Question ID : 26433081697  
 Status : Answered  
 Chosen Option : 3

**Q.6** Select the letter-cluster from among the given options that can replace the question mark (?) in the following series.  
FWCD, HQEF, JKGH, ? , NYKL

- Ans  1. GRXJ  
 2. LEIJ  
 3. GTBP  
 4. LDGB

Question ID : 26433074745  
Status : Answered  
Chosen Option : 2

**Q.7** Select the correct combination of mathematical signs to replace the \* signs and balance the given equation.

$$176 * 4 * 9 * 3 * 13 * 14$$

- Ans  1. ÷ , + , - , × , =  
 2. - , × , + , ÷ , =  
 3. + , - , ÷ , × , =  
 4. × , + , ÷ , - , =

Question ID : 26433085356  
Status : Answered  
Chosen Option : 1

**Q.8** Select the option that is related to the fifth letter-cluster in the same way as the second letter-cluster is related to the first letter-cluster and the fourth letter-cluster is related to the third letter-cluster.

PJE : RNK :: DHN : FLT :: AMS : ?

- Ans  1. DQY  
 2. CQY  
 3. CQZ  
 4. CRY

Question ID : 26433057714  
Status : Answered  
Chosen Option : 2

**Q.9** Which two signs should be interchanged to make the below equation mathematically correct?

$$25 + 8 \div 40 - 20 \times 25 = 10$$

- Ans  1. ÷ and ×  
 2. + and ÷  
 3. + and ×  
 4. - and +

Question ID : 264330117517  
Status : Answered  
Chosen Option : 3

**Q.10** Six students are sitting around a circular table facing the centre. James is sitting second to the right of Peter. Charles is sitting second to the left of Peter. Sam is sitting third to the right of James. Tom is sitting second to the right of Sam. Ashley is an immediate neighbour of Charles and James. Who is sitting between Ashley and Tom?

- Ans**
- 1. James
  - 2. Sam
  - 3. Charles
  - 4. Peter

Question ID : 26433081776  
Status : Answered  
Chosen Option : 1

**Q.11** Which of the following numbers will replace the question mark (?) in the given series?  
29, 65, 95, 119, ?, 149, 155

- Ans**
- 1. 137
  - 2. 143
  - 3. 119
  - 4. 131

Question ID : 26433069389  
Status : Not Answered  
Chosen Option : --

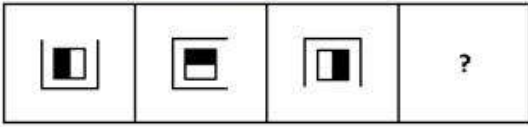
**Q.12** Which option represents the correct order of the given words as they would appear in the English dictionary?

- 1 instant
- 2 invite
- 3 ingrained
- 4 initiate
- 5 intimate

- Ans**
- 1. 3,5,1,4,2
  - 2. 3,4,5,1,2
  - 3. 3,4,1,5,2
  - 4. 3,1,5,4,2

Question ID : 26433069305  
Status : Answered  
Chosen Option : 3

Q.13 Select the figure that will come next in the following series.



Ans

- ✓ 1.
- ✗ 2.
- ✗ 3.
- ✗ 4.

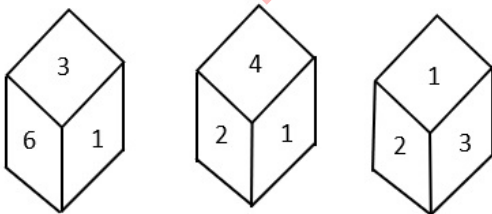
Question ID : 26433078974  
Status : Answered  
Chosen Option : 1

Q.14 In a certain code language, 'BRAND' is written as 'DTYPF' and 'TOWER' is written as 'VMYCT'. How will 'STUDY' be written in that language?

- Ans
- ✗ 1. URWBA
  - ✓ 2. UVSFA
  - ✗ 3. UVWFA
  - ✗ 4. UVFW

Question ID : 26433081766  
Status : Answered  
Chosen Option : 2

Q.15 Three different positions of the same dice are shown. Find the number on the face opposite the face showing '1'.



- Ans
- ✗ 1. 6
  - ✓ 2. 5
  - ✗ 3. 3
  - ✗ 4. 2

Question ID : 26433090075  
Status : Answered  
Chosen Option : 2

**Q.16** Select the set in which the numbers are related in the same way as are the numbers of the following sets.

(NOTE : Operations should be performed on the whole numbers, without breaking down the numbers into its constituent digits. E.g. 13 – Operations on 13 such as adding/subtracting/multiplying etc. to 13 can be performed. Breaking down 13 into 1 and 3 and then performing mathematical operations on 1 and 3 is not allowed)  
(14, 231, 19)  
(7, 154, 15)

- Ans
- 1. (13, 210, 17)
  - 2. (11, 188, 13)
  - 3. (9, 160, 15)
  - 4. (18, 242, 20)

Question ID : 26433076542

Status : **Not Attempted and Marked For Review**

Chosen Option : --

**Q.17** Which letter-cluster will replace the question mark (?) to complete the given series?  
BMYU, YJVR, ?, SDPL, PAMI

- Ans
- 1. WHSO
  - 2. VHSO
  - 3. VGSO
  - 4. WGSO

Question ID : 26433067946

Status : **Answered**

Chosen Option : 3

**Q.18** In a certain code language, 'TERMINATOR' is written as 'ROTANTERMI' and 'SUPERMAN' is written as 'NAMRSUPE'. How will 'AVENGERS' be written in that language?

- Ans
- 1. SERGAVEN
  - 2. SREGAVEN
  - 3. SREAGVEN
  - 4. SREGAVNE

Question ID : 26433068224

Status : **Answered**

Chosen Option : 2

**Q.19** Five friends (A, B, C, E and F) are sitting around a circular table facing the centre. F is sitting to the immediate right of C. A is sitting to the immediate left of C. E is sitting to the immediate right of F. Who is sitting to the immediate right of B?

- Ans
- 1. E
  - 2. C
  - 3. F
  - 4. A

Question ID : 26433080434

Status : **Answered**

Chosen Option : 4

**Q.20** Select the option that is related to the third word in the same way as the second word is related to the first word.

(The words must be considered as meaningful English words and must not be related to each other based on the number of letters/number of consonants/vowels in the word)

Three : Triangle :: Four : ?

- Ans
- 1. Octagon
  - 2. Angle
  - 3. Rectangle
  - 4. Pentagon

Question ID : 26433079466  
Status : Answered  
Chosen Option : 3

Section : Part-B-General Knowledge and General awareness

**Q.1** Fast food is often packed with fat and \_\_\_\_\_.

- Ans
- 1. empty calories
  - 2. iron
  - 3. nutrients
  - 4. calcium

Question ID : 264330115223  
Status : Answered  
Chosen Option : 1

**Q.2** Identify the general formula for alkenes.

- Ans
- 1.  $C_nH_{6n}$
  - 2.  $C_nH_{3n}$
  - 3.  $C_nH_{4n}$
  - 4.  $C_nH_{2n}$

Question ID : 26433086743  
Status : Answered  
Chosen Option : 1

**Q.3** In India, a Small-scale industry is defined with reference to the \_\_\_\_\_.

- Ans
- 1. Maximum number of Directors
  - 2. Maximum number of partners
  - 3. Maximum number of Employees
  - 4. Maximum investment allowed on the assets of a unit.

Question ID : 264330116135  
Status : Not Answered  
Chosen Option : --

**Q.4** Which among the following festivals is the worship of 14 Gods and is celebrated in the month of July?

- Ans
- 1. Bonalu
  - 2. Losar
  - 3. Kharchi Puja
  - 4. Tripureshwari

Question ID : 264330115112  
Status : Not Answered  
Chosen Option : --



**Q.5 When was the initial 10 Fundamental Duties added to the Constitution of India?**

- Ans  1. 1955  
 2. 1976  
 3. 1947  
 4. 1985

Question ID : 264330115622  
Status : Answered  
Chosen Option : 2

**Q.6 Which Schedule of the Constitution of India deals with Union, State and Concurrent lists?**

- Ans  1. 11<sup>th</sup>  
 2. 7<sup>th</sup>  
 3. 9<sup>th</sup>  
 4. 5<sup>th</sup>

Question ID : 26433074906  
Status : Answered  
Chosen Option : 2

**Q.7 India lies in which part of Asia?**

- Ans  1. South Asia  
 2. North Asia  
 3. East Asia  
 4. West Asia

Question ID : 264330116049  
Status : Answered  
Chosen Option : 1

**Q.8 Who among the following hosted the 2019 South Asian Games?**

- Ans  1. India  
 2. Nepal  
 3. Sri Lanka  
 4. Pakistan

Question ID : 264330115940  
Status : Answered  
Chosen Option : 1

**Q.9 What is power, the most visible form of energy, which is often identified with progress in modern civilization, commonly called?**

- Ans  1. fossil fuel  
 2. electricity  
 3. oil  
 4. coal

Question ID : 264330115551  
Status : Answered  
Chosen Option : 2

Q.10 In which year was the first edition of the Khelo India School Games held?

- Ans  1. 2014  
 2. 2020  
 3. 2018  
 4. 2019

Question ID : 26433092325  
Status : Answered  
Chosen Option : 1

Q.11 A co-operative bank in India, is registered under the States \_\_\_\_\_ Act.

- Ans  1. Minorities  
 2. Cooperative Societies  
 3. Companies  
 4. Industries

Question ID : 264330115304  
Status : Answered  
Chosen Option : 2

Q.12 A telecommunication industry includes satellites, closed computer networks and \_\_\_\_\_.

- Ans  1. induction cookers  
 2. tube wells  
 3. air conditioners  
 4. wireless networks

Question ID : 264330115400  
Status : Answered  
Chosen Option : 4

Q.13 What happens at the inter tropical convergence zone?

- Ans  1. The southwest and northwest trade winds converge  
 2. The southwest and northwest trade winds diverge  
 3. The southeast and northeast trade winds converge  
 4. The southeast and northwest trade winds converge

Question ID : 26433091488  
Status : Not Answered  
Chosen Option : --

Q.14 As of November 2022, who is the Union Minister for Food Processing Industries in India?

- Ans  1. Hardeep Singh Puri  
 2. Nityanand Rai  
 3. Pashupati Kumar Paras  
 4. Raj Kumar Singh

Question ID : 264330114936  
Status : Answered  
Chosen Option : 1

Q.15 Chang Lo tribal dance is performed by the Chang tribe of \_\_\_\_\_.

- Ans  1. Chhattisgarh  
 2. Nagaland  
 3. Goa  
 4. Madhya Pradesh

Question ID : 264330115069  
Status : Not Answered  
Chosen Option : --

Q.16 Name of the three of the following is often used together as a group. Pick the odd one out.

- Ans  1. Dada Bhai Naoroji  
 2. Bipin Chandra Pal  
 3. Lala Lajpat Rai  
 4. Bal Gangadhar Tilak

Question ID : 264330115711  
Status : Answered  
Chosen Option : 1

Q.17 Who holds the honour of being the Tirumala Tirupati Devasthanam's Astana Nartaki?

- Ans  1. Mallika Sarabhai  
 2. Yamini Krishnamurthy  
 3. Shovana Narayan  
 4. Sonal Mansingh

Question ID : 264330115840  
Status : Not Answered  
Chosen Option : --

Q.18 The Startup India Initiative, launched on \_\_\_\_\_ has rolled out several programs with the objective of supporting entrepreneurs.

- Ans  1. 16th January,2016  
 2. 14th January,2014  
 3. 17th January,2017  
 4. 15th January,2015

Question ID : 264330116186  
Status : Answered  
Chosen Option : 1

Q.19 Chaudhary Ajit Singh, who passed away in 2021, was the founder of which of the following parties?

- Ans  1. Rashtriya Lok Dal  
 2. Samajwadi Party  
 3. Bahujan Samaj Party  
 4. Communist Party of India

Question ID : 264330115007  
Status : Not Answered  
Chosen Option : --

Q.20 Ashvaghosha who composed 'Buddhacharita' lived in the court of \_\_\_\_\_.

- Ans  1. Kanishka  
 2. Vasudeva  
 3. Vasishka  
 4. Sadashkana

Question ID : 264330106591  
Status : Answered  
Chosen Option : 1

Section : Part-C-Elementary Mathematics

Q.1 A toy is in the form of a cone mounted on a hemisphere. The radius of the hemisphere and that of the cone is 7 cm and height of the cone is 5 cm. The total surface area of the toy (take  $\pi = \frac{22}{7}$ ) is (rounded off to two places of decimal):

- Ans  1. 2648.81 cm<sup>2</sup>  
 2. 2666.85 cm<sup>2</sup>  
 3. 497.25 cm<sup>2</sup>  
 4. 486.65 cm<sup>2</sup>

Question ID : 26433083088  
Status : Not Answered  
Chosen Option : --

Q.2 Find the mean proportional of  $(x + y)^4$  and  $(x - y)^4$ .

- Ans  1.  $(x^2 - y^2)^3$   
 2.  $(x^2 - y^2)$   
 3.  $(x^2 - y^2)^2$   
 4.  $(x^2 - y^2)^4$

Question ID : 26433075552  
Status : Not Answered  
Chosen Option : --

Q.3 The average salary of all the workers in a factory is Rs.3,000. Among these workers, there are 12 higher officers and their average salary is Rs.12,000. The average salary of the remaining workers is Rs.2,500. The total number of the workers is \_\_\_\_\_.

- Ans  1. 200  
 2. 204  
 3. 216  
 4. 228

Question ID : 26433091894  
Status : Answered  
Chosen Option : 4

Q.4 The HCF of  $\frac{3}{8}$ ,  $\frac{5}{12}$  and  $\frac{15}{16}$  is:

- Ans
- 1.  $\frac{1}{12}$
  - 2.  $\frac{1}{24}$
  - 3.  $\frac{1}{48}$
  - 4.  $\frac{1}{36}$

Question ID : 26433079819  
Status : Answered  
Chosen Option : 3

Q.5 The population of a town is increasing at 5% per annum. What will be the population of the town after 2 years, if the present population is 16000?

- Ans
- 1. 17960
  - 2. 16560
  - 3. 16960
  - 4. 17640

Question ID : 26433082405  
Status : Answered  
Chosen Option : 4

Q.6 A sum on compound interest, compounding annually amounts to Rs.30,250 in 2 years and to Rs.33,275 in 3 years. Find the sum.

- Ans
- 1. Rs.23,000
  - 2. Rs.26,000
  - 3. Rs.24,000
  - 4. Rs.25,000

Question ID : 26433082404  
Status : Answered  
Chosen Option : 2

Q.7 A and B can together finish a work in 30 days. They worked together for 20 days and then B left. After another 20 days, A finished the remaining work. In how many days can A alone finish the whole work?

- Ans
- 1. 60
  - 2. 66
  - 3. 56
  - 4. 62

Question ID : 26433075166  
Status : Answered  
Chosen Option : 1

Q.8 By selling goods for ₹ 15,000, Ramu gains ₹ 3,000. What is his profit percentage?

- Ans
- 1. 18%
  - 2. 25%
  - 3. 30%
  - 4. 20%

Question ID : 26433075544  
Status : Answered  
Chosen Option : 2

Q.9 A, B and C together can complete a piece of work in  $40/3$  days. All three started working at it together and after 5 days A left. Then B and C together completed the remaining work in 17 days. Find the number of days (approximately) in which A alone can complete the total work.

- Ans
- 1. 24 days
  - 2. 29 days
  - 3. 26 days
  - 4. 44 days

Question ID : 264330116870  
Status : Not Answered  
Chosen Option : --

Q.10 Find the remainder when the smallest 6-digit number divisible by 12, 15 and 25 is divided by 9.

- Ans
- 1. 3
  - 2. 1
  - 3. 2
  - 4. 0

Question ID : 264330116653  
Status : Answered  
Chosen Option : 1

Q.11 A train travels from Delhi to Dehradun at the speed of 120 km/h and from Dehradun to Delhi at the speed of 130 km/h. What is the average speed during the whole journey?

- Ans
- 1. 127.8 km/h
  - 2. 126.8 km/h
  - 3. 125.4 km/h
  - 4. 124.8 km/h

Question ID : 26433075114  
Status : Not Attempted and Marked For Review  
Chosen Option : --

**Q.12** The marked price of a bedsheet is 14 percent more than its cost price. If a discount of 14 percent is given on the marked price. What is the gain or loss percent?

- Ans**
- 1. 1.44 percent gain
  - 2. 1.96 percent loss
  - 3. 1.64 percent gain
  - 4. 1.82 percent loss

Question ID : 264330116755  
Status : Answered  
Chosen Option : 2

**Q.13** A single discount equivalent to successive discounts of 10%, 20% and 40% on marked price is:

- Ans**
- 1.  $56\frac{4}{5}\%$
  - 2.  $52\frac{1}{5}\%$
  - 3.  $51\frac{4}{5}\%$
  - 4.  $48\frac{1}{5}\%$

Question ID : 26433074458  
Status : Answered  
Chosen Option : 1

**Q.14** 75% of first number is equal to 60% of second number. What is the ratio of the first number and second number?

- Ans**
- 1. 2 : 3
  - 2. 4 : 5
  - 3. 1 : 2
  - 4. 3 : 4

Question ID : 26433082788  
Status : Answered  
Chosen Option : 2

**Q.15** Find the volume of a cone, the radius of whose base is 21 cm and height is 20 cm. Take  $\pi = \frac{22}{7}$ .

- Ans**
- 1. 8840 cm<sup>3</sup>
  - 2. 9204 cm<sup>3</sup>
  - 3. 9420 cm<sup>3</sup>
  - 4. 9240 cm<sup>3</sup>

Question ID : 26433075253  
Status : Answered  
Chosen Option : 4

Q.16 Find the mean proportional between 18 and 32.

- Ans  1. 22  
 2. 24  
 3. 20  
 4. 25

Question ID : 26433082389  
Status : Answered  
Chosen Option : 2

Q.17 An almirah was brought for Rs.14,360 and Rs.240 was spent on its transportation. At what price should it be sold, to gain 15%?

- Ans  1. Rs.16,780  
 2. Rs.16,800  
 3. Rs.16,770  
 4. Rs.16,790

Question ID : 26433066359  
Status : Answered  
Chosen Option : 4

Q.18 Ravish travelled the first 20 km of an entire distance at a speed of 12 km/h; the next 25 km at a speed of 10 km/h and the remaining distance at a speed of 15 km/h. If his overall average speed was 13.5 km/h, what was the distance that Ravish travelled at a speed of 15 km/h?

- Ans  1. 111.95 km  
 2. 110.95 km  
 3. 112.5 km  
 4. 113.95km

Question ID : 26433073132  
Status : Not Answered  
Chosen Option : --

Q.19 A car covers a distance of 1080 km in 240 minutes. What is the speed of the car in m/sec?

- Ans  1. 70  
 2. 81  
 3. 55  
 4. 75

Question ID : 26433071234  
Status : Not Attempted and Marked For Review  
Chosen Option : --

Q.20 Om decided to order 12 percent more millet flour for his bakery than last year. If he ordered 240 kg last year, then how much quantity of millet flour should he order this year?

- Ans  1. 272.2 kg  
 2. 268.8 kg  
 3. 252.2 kg  
 4. 258.8 kg

Question ID : 264330116790  
Status : Answered  
Chosen Option : 2



Section : Part-D-English

**Q.1 Select the most appropriate meaning of the given idiom.**

**Hang in there**

- Ans**  1. A wise decision  
 2. Overcoming joy  
 3. Don't rake up a controversy  
 4. Don't give up

Question ID : 26433073993  
Status : Answered  
Chosen Option : 1

**Q.2 Select the most appropriate ANTONYM of the given word.**

**Transient**

- Ans**  1. Delicate  
 2. Perishable  
 3. Temporary  
 4. Permanent

Question ID : 26433074051  
Status : Answered  
Chosen Option : 4

**Q.3 Select the most appropriate ANTONYM of the given word.**

**Confident**

- Ans**  1. Cowardly  
 2. Undaunted  
 3. Bold  
 4. Carefree

Question ID : 26433089033  
Status : Answered  
Chosen Option : 1

**Q.4 Select the most appropriate meaning of the given idiom.**

**To put a spoke in one's wheel**

- Ans**  1. To thwart someone in execution of one's design  
 2. To leave someone without any provision  
 3. To receive cold reception  
 4. Narrating a false story

Question ID : 26433073875  
Status : Answered  
Chosen Option : 1

**Q.5 Select the INCORRECTLY spelt word.**

- Ans**  1. Necessity  
 2. Weather  
 3. Knowledge  
 4. Modest

Question ID : 26433073725  
Status : Answered  
Chosen Option : 1

**Q.6** Select the most appropriate synonym of the underlined word in the following sentence.

One should enjoy liberty with duties in mind.

- Ans
- 1. Meal
  - 2. Democracy
  - 3. Statue
  - 4. Freedom

Question ID : 26433072354  
Status : Answered  
Chosen Option : 4

**Q.7** Select the correct pair of words for the blanks in the given sentence.

Computer has a \_\_\_\_\_ memory and my father prefers \_\_\_\_\_ to digital payments.

- Ans
- 1. cash; cash
  - 2. cache; cash
  - 3. cache; cache
  - 4. cash; cache

Question ID : 26433060548  
Status : Answered  
Chosen Option : 2

**Q.8** Select the most appropriate ANTONYM of the given word.

Significant

- Ans
- 1. Prominent
  - 2. Idle
  - 3. Distinct
  - 4. Paltry

Question ID : 26433072212  
Status : Answered  
Chosen Option : 4

**Q.9** Select the most appropriate synonym of the given word.

Aghast

- Ans
- 1. Mystified
  - 2. Inspired
  - 3. Pacified
  - 4. Horrified

Question ID : 26433073979  
Status : Not Answered  
Chosen Option : --

**Q.10** Select the INCORRECTLY spelt word.

- Ans
- 1. Lament
  - 2. License
  - 3. Juggle
  - 4. Exklusive

Question ID : 26433073734  
Status : Answered  
Chosen Option : 4

**Q.11** Select the most appropriate option to fill in the blank.  
We \_\_\_\_\_ the mathematical issue with zest and vigour.

- Ans
- 1. cleared up
  - 2. solved
  - 3. settled
  - 4. remedied

Question ID : 26433091725  
Status : Answered  
Chosen Option : 2

**Q.12** Select the most appropriate option that can substitute the underlined segment in the given sentence. If there is no need to substitute it, select 'No substitution'.

The farmer has been work since 8 a.m. today and he's not completed the work yet.

- Ans
- 1. is been working
  - 2. has been working
  - 3. No substitution
  - 4. had working

Question ID : 26433088739  
Status : Answered  
Chosen Option : 2

**Q.13** Select the most appropriate option to fill in the blank.

The garbage \_\_\_\_\_ empties into a big bin.

- Ans
- 1. shoot
  - 2. should
  - 3. shook
  - 4. chute

Question ID : 26433090390  
Status : Answered  
Chosen Option : 2

**Q.14** The following sentence has been split into four segments. Identify the segment that contains a grammatical error.

I am give / a speech on / emerging economic dynamics / in the program.

- Ans
- 1. I am give
  - 2. a speech on
  - 3. emerging economic dynamics
  - 4. in the program

Question ID : 26433094741  
Status : Answered  
Chosen Option : 1

**Q.15** Select the most appropriate option that can substitute the underlined segment in the given sentence. If there is no need to substitute it, select 'No substitution'.

I went there to say goodbye to him but he refuse to meet me.

- Ans**
- 1. No substitution
  - 2. he refused to meet me
  - 3. he has refused to meet me
  - 4. he refused in meeting me

Question ID : 26433093073  
Status : Answered  
Chosen Option : 2

**Comprehension:**

In the following passage, some words have been deleted. Read the passage carefully and select the most appropriate option to fill in each blank.

A lot of research has (1)\_\_\_\_\_ that reptiles and amphibians are cold-blooded (2)\_\_\_\_\_. By the term cold-blooded animals, we (3)\_\_\_\_\_ that they cannot control their body temperature like we can. A reptile's skin is dry and scaly, (4)\_\_\_\_\_ the skin of an amphibian is wet and smooth. Most reptiles spend much of their time (5)\_\_\_\_\_ on land. Most amphibians live in or around water.

**SubQuestion No : 16**

**Q.16** Select the most appropriate option to fill in blank number 1.

- Ans**
- 1. proved
  - 2. tell
  - 3. talked
  - 4. spread

Question ID : 26433089035  
Status : Answered  
Chosen Option : 1

**Comprehension:**

In the following passage, some words have been deleted. Read the passage carefully and select the most appropriate option to fill in each blank.

A lot of research has (1)\_\_\_\_\_ that reptiles and amphibians are cold-blooded (2)\_\_\_\_\_. By the term cold-blooded animals, we (3)\_\_\_\_\_ that they cannot control their body temperature like we can. A reptile's skin is dry and scaly, (4)\_\_\_\_\_ the skin of an amphibian is wet and smooth. Most reptiles spend much of their time (5)\_\_\_\_\_ on land. Most amphibians live in or around water.

**SubQuestion No : 17**

**Q.17** Select the most appropriate option to fill in blank number 2.

- Ans**
- 1. birds
  - 2. animals
  - 3. plants
  - 4. organisms

Question ID : 26433089036  
Status : Answered  
Chosen Option : 2

**Comprehension:**

In the following passage, some words have been deleted. Read the passage carefully and select the most appropriate option to fill in each blank.

A lot of research has (1)\_\_\_\_\_ that reptiles and amphibians are cold-blooded (2)\_\_\_\_\_. By the term cold-blooded animals, we (3)\_\_\_\_\_ that they cannot control their body temperature like we can. A reptile's skin is dry and scaly, (4)\_\_\_\_\_ the skin of an amphibian is wet and smooth. Most reptiles spend much of their time (5)\_\_\_\_\_ on land. Most amphibians live in or around water.

**SubQuestion No : 18**

**Q.18 Select the most appropriate option to fill in blank number 3.**

- Ans**  1. intent  
 2. express  
 3. designate  
 4. mean

Question ID : 26433089037  
Status : Answered  
Chosen Option : 4

**Comprehension:**

In the following passage, some words have been deleted. Read the passage carefully and select the most appropriate option to fill in each blank.

A lot of research has (1)\_\_\_\_\_ that reptiles and amphibians are cold-blooded (2)\_\_\_\_\_. By the term cold-blooded animals, we (3)\_\_\_\_\_ that they cannot control their body temperature like we can. A reptile's skin is dry and scaly, (4)\_\_\_\_\_ the skin of an amphibian is wet and smooth. Most reptiles spend much of their time (5)\_\_\_\_\_ on land. Most amphibians live in or around water.

**SubQuestion No : 19**

**Q.19 Select the most appropriate option to fill in blank number 4.**

- Ans**  1. contrary  
 2. similarly  
 3. conversely  
 4. whereas

Question ID : 26433089038  
Status : Answered  
Chosen Option : 4

**Comprehension:**

In the following passage, some words have been deleted. Read the passage carefully and select the most appropriate option to fill in each blank.

A lot of research has (1)\_\_\_\_\_ that reptiles and amphibians are cold-blooded (2)\_\_\_\_\_. By the term cold-blooded animals, we (3)\_\_\_\_\_ that they cannot control their body temperature like we can. A reptile's skin is dry and scaly, (4)\_\_\_\_\_ the skin of an amphibian is wet and smooth. Most reptiles spend much of their time (5)\_\_\_\_\_ on land. Most amphibians live in or around water.

**SubQuestion No : 20**

**Q.20 Select the most appropriate option to fill in blank number 5.**

- Ans**  1. walking  
 2. dragging  
 3. jumping  
 4. crawling

Question ID : 26433089039  
Status : Answered  
Chosen Option : 4

Q.1 दिए गए वाक्य में रेखांकित अंश के स्थान पर सबसे उपयुक्त शब्द निम्न में से कौन-सा होगा?  
लोग बड़ी मात्रा में जमा हो गए।

- Ans
- 1. भीड़
  - 2. संख्या
  - 3. मात्र
  - 4. परिमाण

Question ID : 26433072582  
Status : Not Answered  
Chosen Option : --

Q.2 "यह उसके जीवन की प्रमुख घटना थी।" इस वाक्य में प्रयुक्त शब्द 'प्रमुख' के स्थान पर उसके विलोम शब्द का प्रयोग निम्न में से किस वाक्य में किया गया है?

- Ans
- 1. यह उसके जीवन की विशिष्ट घटना थी।
  - 2. यह उसके जीवन की क्षीण घटना थी।
  - 3. यह उसके जीवन की गौण घटना थी।
  - 4. यह उसके जीवन की महत्वपूर्ण घटना थी।

Question ID : 26433067026  
Status : Not Answered  
Chosen Option : --

Q.3 निम्नलिखित में से अशुद्ध वाक्य कौन-सा है?

- Ans
- 1. मनुष्य स्वभावतः अकेलापन पसंद नहीं करता।
  - 2. देश में सर्वस्व शांति होना चाहिए।
  - 3. विकास के सूत्र मानव के हाथ में हैं।
  - 4. मनुष्यता मनुष्य की अमूल्य निधि है।

Question ID : 26433066990  
Status : Not Answered  
Chosen Option : --

Q.4 मुहावरों और उनके अर्थ का निम्न में से कौन सा एक युग्म सही है?

- Ans
- 1. माथा ठनकना-खुशामद करना
  - 2. मन मैला करना-अत्यधिक प्रसन्न होना
  - 3. रंग बदलना-अपरिवर्तनशील होना
  - 4. बालू से तेल निकालना-असंभव को संभव करना

Question ID : 26433062560  
Status : Not Answered  
Chosen Option : --

Q.5 निम्न वाक्यांश के लिए विकल्पों में से उपयुक्त शब्द चुनें।  
ऊँट पर रखकर चलायी जाने वाली तोप

- Ans
- 1. बंदूक
  - 2. मुकुल
  - 3. सुतुरनाल
  - 4. शरासन

Question ID : 26433069993  
Status : Not Answered  
Chosen Option : --

Q.6 विलोम शब्दों का निम्न में से कौन-सा युग्म सुमेलित नहीं है?

- Ans  1. अपना-पराया  
 2. अग्नि-आग  
 3. आकाश-पाताल  
 4. आस्था-अनास्था

Question ID : 26433067091  
Status : Not Answered  
Chosen Option : --

Q.7 निम्न वाक्य में रेखांकित शब्द को विकल्पों में दिए गए शब्दों में से उपयुक्त शब्द से बदलें।  
मैं आशा करूँगा कि समय पर आपके पास पहुँच जाऊँ।

- Ans  1. चेष्टा  
 2. चिंता  
 3. उलकंठा  
 4. प्रत्याशा

Question ID : 26433062872  
Status : Not Answered  
Chosen Option : --

Q.8 निम्नलिखित विकल्पों में से किस एक वाक्य में संख्यावाचक विशेषण का उचित प्रयोग नहीं किया गया है?

- Ans  1. गौरव के पास थोड़ी-सी भूमि बची हुई है।  
 2. दिल्ली के पास यमुना में जरा-सा पानी है।  
 3. यह किसका खरगोश है?  
 4. मेरी गाय थोड़ा दूध देती है।

Question ID : 26433062965  
Status : Not Answered  
Chosen Option : --

Q.9 'आँखों में धूल झोंकना' मुहावरे का उचित अर्थ है-

- Ans  1. ध्यान न देना  
 2. इशारा करना  
 3. धोखा देना  
 4. कुछ न देखना

Question ID : 26433065878  
Status : Not Answered  
Chosen Option : --

Q.10 उसने मेरे साथ गद्देदारी की है।  
उपरोक्त वाक्य के किस भाग में अशुद्धि है?

- Ans  1. की है।  
 2. गद्देदारी  
 3. उसने  
 4. मेरे साथ

Question ID : 26433079760  
Status : Not Answered  
Chosen Option : --

Q.11 'जो देखने योग्य न हो' वाक्यांश के लिए उचित शब्द बताइए -

- Ans  1. अदर्शनीय  
 2. अदृश्य  
 3. अप्रत्यक्ष  
 4. अवर्णीय

Question ID : 26433065902  
Status : Not Answered  
Chosen Option : --

Q.12 निम्नलिखित विकल्पों में से कौन सा एक वाक्य क्रिया-विशेषण से सम्बन्ध रखता है?

- Ans  1. सीता यहाँ आ रही है।  
 2. बच्चे दौड़ते हैं।  
 3. वह खड़ा है।  
 4. गाय चरती है।

Question ID : 26433062949  
Status : Not Answered  
Chosen Option : --

Q.13 नीचे दिए वाक्यांश के लिए उचित शब्द दिए गए विकल्पों में से चुनिए-  
जो सबके आगे रहता हो

- Ans  1. अग्रणी  
 2. अग्रिम  
 3. अग्रगण्य  
 4. अग्रज

Question ID : 26433062385  
Status : Not Answered  
Chosen Option : --

Q.14 निम्नलिखित वाक्य के रिक्तस्थानों की पूर्ति उपयुक्त एकार्थी शब्द-युग्म द्वारा कीजिए।  
आदमी की \_\_\_\_\_ उसे सफल बनती है, वहीं सफलता उसका \_\_\_\_\_-योग है।

- Ans  1. दीपक-रोशनी  
 2. शुभ मुहूर्त-नतीजा  
 3. ताजा-समान  
 4. लगन-लग्न

Question ID : 26433091325  
Status : Not Answered  
Chosen Option : --

Q.15 मैं गेंदे की जगह नलिन के फूल देवी को अर्पित करूँगी।  
उपरोक्त वाक्य में रेखांकित शब्द का पर्यायवाची क्या होगा?

- Ans  1. केसर  
 2. कमल  
 3. जुही  
 4. पुष्प

Question ID : 26433080852  
Status : Not Answered  
Chosen Option : --



**Comprehension:**

निम्नलिखित गद्यांश में कुछ शब्दों को हटा दिया गया है। दिए गए विकल्पों की सहायता से रिक्त स्थानों की पूर्ति कीजिए। प्रत्येक संख्या के लिए सबसे उपयुक्त विकल्प का चयन कीजिए।  
आज घर-घर बांटे जाने वाले समाचार पत्र से लगभग सभी की 1. \_\_\_\_\_ प्रारंभ होती है। यह हमारे जीवन की 2. \_\_\_\_\_ आवश्यकता बन गया है। किसी कारणवश यदि इसे पढ़ने का 3. \_\_\_\_\_ नहीं मिलता तो ऐसा प्रतीत होता है कि मानो कोई बड़ा और महत्वपूर्ण कार्य छूट गया है। समाचार पत्र से घर बैठे ही बहुत ही कम पैसों में देश-विदेश का 4. \_\_\_\_\_ प्राप्त हो जाता है। यह सभी प्रकार के समाचार और जनता के मध्य 5. \_\_\_\_\_ का कार्य करता है।

**SubQuestion No : 16****Q.16 रिक्त स्थान 1 की पूर्ति के लिए सबसे उपयुक्त विकल्प का चयन कीजिए।**

- Ans  1. दिनचर्या  
 2. छुट्टियाँ  
 3. कुशलता  
 4. आवश्यकता

Question ID : 264330111113

Status : Not Answered

Chosen Option : --

**Comprehension:**

निम्नलिखित गद्यांश में कुछ शब्दों को हटा दिया गया है। दिए गए विकल्पों की सहायता से रिक्त स्थानों की पूर्ति कीजिए। प्रत्येक संख्या के लिए सबसे उपयुक्त विकल्प का चयन कीजिए।  
आज घर-घर बांटे जाने वाले समाचार पत्र से लगभग सभी की 1. \_\_\_\_\_ प्रारंभ होती है। यह हमारे जीवन की 2. \_\_\_\_\_ आवश्यकता बन गया है। किसी कारणवश यदि इसे पढ़ने का 3. \_\_\_\_\_ नहीं मिलता तो ऐसा प्रतीत होता है कि मानो कोई बड़ा और महत्वपूर्ण कार्य छूट गया है। समाचार पत्र से घर बैठे ही बहुत ही कम पैसों में देश-विदेश का 4. \_\_\_\_\_ प्राप्त हो जाता है। यह सभी प्रकार के समाचार और जनता के मध्य 5. \_\_\_\_\_ का कार्य करता है।

**SubQuestion No : 17****Q.17 रिक्त स्थान 2 की पूर्ति के लिए सबसे उपयुक्त विकल्प का चयन कीजिए।**

- Ans  1. प्रमाणिक  
 2. उपद्रव  
 3. नैतिक  
 4. दैनिक

Question ID : 264330111114

Status : Not Answered

Chosen Option : --

**Comprehension:**

निम्नलिखित गद्यांश में कुछ शब्दों को हटा दिया गया है। दिए गए विकल्पों की सहायता से रिक्त स्थानों की पूर्ति कीजिए। प्रत्येक संख्या के लिए सबसे उपयुक्त विकल्प का चयन कीजिए।  
आज घर-घर बांटे जाने वाले समाचार पत्र से लगभग सभी की 1. \_\_\_\_\_ प्रारंभ होती है। यह हमारे जीवन की 2. \_\_\_\_\_ आवश्यकता बन गया है। किसी कारणवश यदि इसे पढ़ने का 3. \_\_\_\_\_ नहीं मिलता तो ऐसा प्रतीत होता है कि मानो कोई बड़ा और महत्वपूर्ण कार्य छूट गया है। समाचार पत्र से घर बैठे ही बहुत ही कम पैसों में देश-विदेश का 4. \_\_\_\_\_ प्राप्त हो जाता है। यह सभी प्रकार के समाचार और जनता के मध्य 5. \_\_\_\_\_ का कार्य करता है।

**SubQuestion No : 18****Q.18 रिक्त स्थान 3 की पूर्ति के लिए सबसे उपयुक्त विकल्प का चयन कीजिए।**

- Ans  1. महत्त्व  
 2. दबाव  
 3. मन  
 4. अवसर

Question ID : 264330111115

Status : Not Answered

Chosen Option : --

**Comprehension:**

निम्नलिखित गद्यांश में कुछ शब्दों को हटा दिया गया है। दिए गए विकल्पों की सहायता से रिक्त स्थानों की पूर्ति कीजिए। प्रत्येक संख्या के लिए सबसे उपयुक्त विकल्प का चयन कीजिए।  
आज घर-घर बांटे जाने वाले समाचार पत्र से लगभग सभी की 1. \_\_\_\_\_ प्रारंभ होती है। यह हमारे जीवन की 2. \_\_\_\_\_ आवश्यकता बन गया है। किसी कारणवश यदि इसे पढ़ने का 3. \_\_\_\_\_ नहीं मिलता तो ऐसा प्रतीत होता है कि मानो कोई बड़ा और महत्वपूर्ण कार्य छूट गया है। समाचार पत्र से घर बैठे ही बहुत ही कम पैसों में देश-विदेश का 4. \_\_\_\_\_ प्राप्त हो जाता है। यह सभी प्रकार के समाचार और जनता के मध्य 5. \_\_\_\_\_ का कार्य करता है।

**SubQuestion No : 19****Q.19 रिक्त स्थान 4 की पूर्ति के लिए सबसे उपयुक्त विकल्प का चयन कीजिए।**

- Ans**  1. समाचार  
 2. प्रमाण  
 3. प्यार  
 4. परिणाम

Question ID : 264330111116  
Status : Not Answered  
Chosen Option : --

**Comprehension:**

निम्नलिखित गद्यांश में कुछ शब्दों को हटा दिया गया है। दिए गए विकल्पों की सहायता से रिक्त स्थानों की पूर्ति कीजिए। प्रत्येक संख्या के लिए सबसे उपयुक्त विकल्प का चयन कीजिए।  
आज घर-घर बांटे जाने वाले समाचार पत्र से लगभग सभी की 1. \_\_\_\_\_ प्रारंभ होती है। यह हमारे जीवन की 2. \_\_\_\_\_ आवश्यकता बन गया है। किसी कारणवश यदि इसे पढ़ने का 3. \_\_\_\_\_ नहीं मिलता तो ऐसा प्रतीत होता है कि मानो कोई बड़ा और महत्वपूर्ण कार्य छूट गया है। समाचार पत्र से घर बैठे ही बहुत ही कम पैसों में देश-विदेश का 4. \_\_\_\_\_ प्राप्त हो जाता है। यह सभी प्रकार के समाचार और जनता के मध्य 5. \_\_\_\_\_ का कार्य करता है।

**SubQuestion No : 20****Q.20 रिक्त स्थान 5 की पूर्ति के लिए सबसे उपयुक्त विकल्प का चयन कीजिए।**

- Ans**  1. आदर्श  
 2. सेतु  
 3. उपयोगिता  
 4. साथ

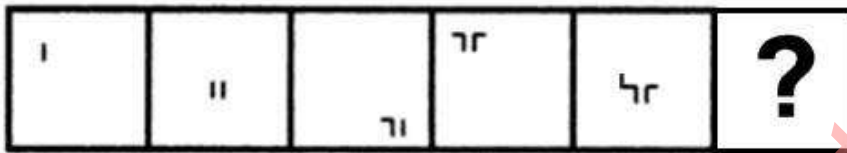
Question ID : 264330111117  
Status : Not Answered  
Chosen Option : --

# Constable GD in CAPFs SSF Rifleman GD in Assam Rifles and Sepoy in NCB Examination 2022

Roll Number	KD Job Updates
Candidate Name	KD Job Updates
Venue Name	iON Digital Zone iDZ Naino Ka Bas
Exam Date	13/01/2023
Exam Time	5:15 PM - 6:15 PM
Subject	Constable GD Examination 2022

Section : Part-A-General Intelligence and Reasoning

Q.1 Select the figure from among the given options that can replace the question mark (?) in the following series.



Ans

✗ 1.



✗ 2.



✓ 3.



✗ 4.



Question ID : 26433080492  
Status : Answered  
Chosen Option : 3

Q.2 In a certain code language, 'MANTLE' is written as 'JZKGIV' and 'TINKER' is written as 'QRKPBI'. How will 'DERIVE' be written in that language?

- Ans  1. AVORSV  
 2. AUORST  
 3. KBORSN  
 4. KCQTUM

Question ID : 26433069464  
Status : Answered  
Chosen Option : 1

Q.3 Six students are sitting around a circular table facing the centre. Shirley is sitting second to the right of Leena. Diana is sitting fifth to the right of Shirley. Violet is sitting third to the right of Diana. Abdul is sitting second to the left of Diana. Vikram is sitting third to the left of Leena. Who is sitting between Vikram and Diana?

- Ans  1. Violet  
 2. Shirley  
 3. Abdul  
 4. Leena

Question ID : 26433081779  
Status : Answered  
Chosen Option : 2

Q.4 Which option represents the correct order of the given words as they would appear in the English dictionary?

- 1 naughty  
2 natural  
3 national  
4 nagging  
5 napping

- Ans  1. 5,4,3,2,1  
 2. 3,4,2,1,5  
 3. 4,5,1,2,3  
 4. 4,5,3,2,1

Question ID : 26433069315  
Status : Answered  
Chosen Option : 4

Q.5 Which letter-cluster will replace the question mark (?) to complete the given series?  
DKLX, EMOU, FORR, ?, HSXL

- Ans  1. GQTP  
 2. GQUP  
 3. GQUO  
 4. GQTO

Question ID : 26433068572  
Status : Answered  
Chosen Option : 3

**Q.6** Select the letter-cluster from among the given options that can replace the question mark (?) in the following series.  
YCLE, DWQJ, IQVO, ?, SEFY

- Ans
- 1. HLAW
  - 2. NHKR
  - 3. HDLA
  - 4. NKAT

Question ID : 26433074748  
Status : Answered  
Chosen Option : 4

**Q.7** Select the option that is related to the third word in the same way as the second word is related to the first word.  
(The words must be considered as meaningful English words and must not be related to each other based on the number of letters/number of consonants/vowels in the word)  
Painter : Brush :: Gardener : ?

- Ans
- 1. Spinners
  - 2. Rake
  - 3. Tractor
  - 4. Wrench

Question ID : 26433079469  
Status : Answered  
Chosen Option : 3

**Q.8** Select the option that is related to the fifth term in the same way as the second term is related to the first term and fourth term is related to the third term.  
SECURITY : 19ECURIT25 :: ENHANCED : 5NHANCE4 :: USAGE : ?

- Ans
- 1. 2343AG
  - 2. 5USAG3
  - 3. 21SAG5
  - 4. 1USAGE3

Question ID : 26433067263  
Status : Answered  
Chosen Option : 3

**Q.9** Select the correct combination of mathematical signs to sequentially replace the \* signs and to balance the given equation.  
 $30 * 2 * 20 * 13 * 67$

- Ans
- 1.  $\times, -, +, =$
  - 2.  $\times, +, -, =$
  - 3.  $\times, +, +, =$
  - 4.  $+, +, -, =$

Question ID : 26433085687  
Status : Answered  
Chosen Option : 2

Q.10 In a code language, 'dark colors' is coded as 'yu nu', 'days are bright' is coded as 'wu tu ku', 'nights are dark' is coded as 'ku nu pu', 'paint bright' is coded as 'wu ru'. What is the code for the word 'paint'?

- Ans
- 1. ku
  - 2. tu
  - 3. wu
  - 4. ru

Question ID : 26433082274  
Status : Answered  
Chosen Option : 4

Q.11 Which two signs should be interchanged to make the below equation mathematically correct?

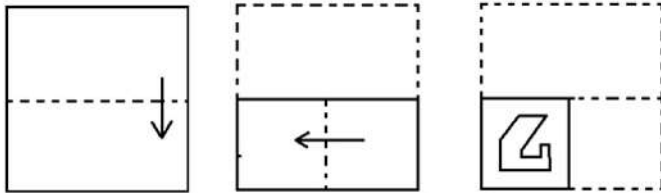
$$54 \times 6 - 36 \div 12 + 27 = 24$$

- Ans
- 1. + and ÷
  - 2. ÷ and -
  - 3. + and ×
  - 4. - and +

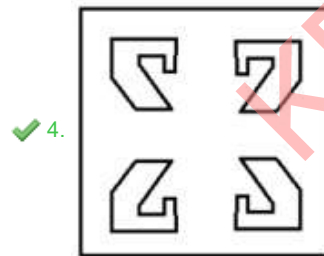
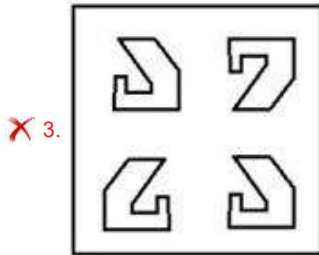
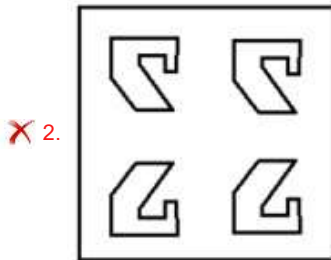
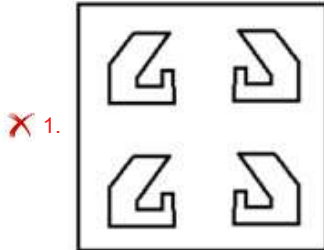
Question ID : 264330117520  
Status : Answered  
Chosen Option : 2

KD Job Updates

**Q.12** The sequence of folding a piece of paper and the manner in which the folded paper has been cut is shown below. Select the figure which would most closely resemble the unfolded form of the paper.



Ans



Question ID : 26433087093  
 Status : Answered  
 Chosen Option : 4

Q.13 Seven people, A, B, C, D, E, F and G are sitting in a straight row, facing north. A sits second from the left. Only two people sit between A and C. Only 3 people sit between D and F and D is an immediate neighbour of A. B is an immediate neighbour of D and E is not an immediate neighbour of C. Who sits to the immediate right of C?

- Ans
- 1. G
  - 2. F
  - 3. D
  - 4. B

Question ID : 26433056935  
Status : Answered  
Chosen Option : 1

Q.14 Which of the following numbers will replace the question mark (?) in the given series?  
589, 588, 583, ?, 433, -192

- Ans
- 1. 558
  - 2. 560
  - 3. 565
  - 4. 544

Question ID : 26433069396  
Status : Answered  
Chosen Option : 1

Q.15 In a certain code language,  
'A + B' means 'A is the sister of B',  
'A - B' means 'A is the father of B',  
'A x B' means 'A is the brother of B' and  
'A & B' means 'A is the son of B'.  
How is T related to G if T + Q - R x H & G?

- Ans
- 1. Daughter
  - 2. Sister
  - 3. Mother's sister
  - 4. Husband's sister

Question ID : 26433070367  
Status : Answered  
Chosen Option : 4

Q.16 Select the option that is related to the third number in the same way as the second number is related to the first number and the sixth number is related to the fifth number.

7 : 1000 :: 4 : ? :: 12 : 3375

- Ans
- 1. 194
  - 2. 282
  - 3. 343
  - 4. 144

Question ID : 26433069188  
Status : Answered  
Chosen Option : 3



Q.17 Which of the following numbers will replace the question mark (?) in the given series?  
0, 6, 24, 60, 120, ?

Ans  1. 210

2. 190

3. 220

4. 240

Question ID : 26433082000

Status : Answered

Chosen Option : 1

Q.18 Select the correct mirror image of the given figure when the mirror is placed at MN as shown below.

fORmuLAtiOn  
M  
|  
N

Ans  1. nOitAJumrOf

2. noitAJumrOf

3. nOitAJumrOf

4. noitAJumrOf

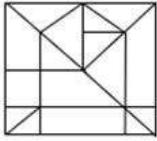
Question ID : 26433085549

Status : Answered

Chosen Option : 3

KD Job Updates

Q.19 Select the option figure that is embedded in the given figure (rotation is NOT allowed).



Ans

- 1.
- 2.
- 3.
- 4.

Question ID : 26433069485  
Status : Answered  
Chosen Option : 4

Q.20 Three statements are given followed by three conclusions numbered I, II and III. Assuming the statements to be true, even if they seem to be at variance with commonly known facts, decide which of the conclusions logically follow(s) from the statements.

Statements:

All beds are tables.

All cots are tables.

All tables are taps.

Conclusions:

I. All cots are taps.

II. Some taps are beds.

III. Some taps are cots.

- Ans  1. Only conclusions I and II follow
2. Only conclusions I and III follow
3. All conclusions follow
4. Only conclusions II and III follow

Question ID : 26433082315  
Status : Marked For Review  
Chosen Option : 3

Q.1 The tribal group called 'Santhals' rose in revolt in \_\_\_\_\_.

Ans  1. 1876

2. 1855

3. 1896

4. 1860

Question ID : 264330115714  
Status : Not Answered  
Chosen Option : --

Q.2 Which of the following industries is reserved for the manufacture of items exclusively in the public sector?

Ans  1. Fertilizers

2. Atomic Energy

3. Cotton and textile

4. Medical

Question ID : 26433064865  
Status : Answered  
Chosen Option : 3

Q.3 India has inland navigation waterways of \_\_\_\_\_ km in length.

Ans  1. 11,000

2. 13,600

3. 14,500

4. 12,500

Question ID : 264330115554  
Status : Answered  
Chosen Option : 4

Q.4 Which Constitutional Amendment introduced the compulsory education to children between the age group of 6 to 14?

Ans  1. 82nd

2. 85th

3. 83rd

4. 86th

Question ID : 264330115625  
Status : Answered  
Chosen Option : 1

Q.5 The constellation 'Ursa Major' is also known as \_\_\_\_\_.

- Ans
- 1. The Chained Maiden
  - 2. The Hunter
  - 3. The Queen
  - 4. The Great Bear

Question ID : 26433092213  
Status : Answered  
Chosen Option : 4

Q.6 The \_\_\_\_\_ mandates the requirement of POSH policy, in order to prevent sexual harassment against women in the workplace and also to protect them .

- Ans
- 1. "The Sexual Harassment of Women at Workplace Act,2019"
  - 2. "The Sexual Harassment of Women Act,2015"
  - 3. "The Sexual Harassment of Women at Workplace (Prevention, Prohibition, and Redressal) Act, 2013".
  - 4. "The Sexual Harassment of Women at Workplace (Protection, Prohibition, and Redressal) Act, 2014"

Question ID : 264330116211  
Status : Not Answered  
Chosen Option : --

Q.7 As on April 2021, how many states have a Legislative Council?

- Ans
- 1. 5
  - 2. 6
  - 3. 7
  - 4. 4

Question ID : 26433086670  
Status : Answered  
Chosen Option : 2

Q.8 Who sworn in as the Central Vigilance Commissioner (CVC) in August 2022?

- Ans
- 1. Pradeep Kumar
  - 2. Sharad Kumar
  - 3. Suresh Patel
  - 4. Sanjay Kothari

Question ID : 264330115010  
Status : Answered  
Chosen Option : 3

Q.9 In India, Microfinance activities gained prominence in the early \_\_\_\_\_.

- Ans  1. 1980s  
 2. 1990s  
 3. 1950s  
 4. 1970s

Question ID : 264330115307  
Status : Answered  
Chosen Option : 1

Q.10 Name the suicidal bags of the cell.

- Ans  1. Centriole  
 2. Lysosomes  
 3. Peroxisomes  
 4. Glyoxysomes

Question ID : 264330115244  
Status : Answered  
Chosen Option : 2

Q.11 The First Formula 1 Race in India was held in \_\_\_\_\_.

- Ans  1. 2015  
 2. 2011  
 3. 2012  
 4. 2013

Question ID : 264330116279  
Status : Not Answered  
Chosen Option : --

Q.12 Uttar Pradesh shares its international boundary with which country?

- Ans  1. Pakistan  
 2. Bhutan  
 3. China  
 4. Nepal

Question ID : 264330116103  
Status : Answered  
Chosen Option : 4

Q.13 \_\_\_\_\_ is considered as the backbone of development in general.

- Ans  1. Education industry  
 2. Dairy industry  
 3. Banking  
 4. Manufacturing industry

Question ID : 264330115410  
Status : Answered  
Chosen Option : 1

Q.14 During the Chaliha Sahib festival, Sindhis observe a \_\_\_\_\_-day fast to show their devotion to Lord Jhulelal.

- Ans  1. 20  
 2. 10  
 3. 40  
 4. 30

Question ID : 264330115122  
Status : Not Answered  
Chosen Option : --

Q.15 Which team has won the highest number of Ranji Trophy titles?

- Ans  1. Uttar Pradesh  
 2. Mumbai  
 3. Tamil Nadu  
 4. Karnataka

Question ID : 26433092329  
Status : Answered  
Chosen Option : 2

Q.16 Who among the following Congress leaders of India retired from Rajya Sabha in March 2022?

- Ans  1. Rahul Gandhi  
 2. Supriya Sule  
 3. Kumaraswami Kamaraj  
 4. Palaniappan Chidambaram

Question ID : 264330114946  
Status : Answered  
Chosen Option : 3

Q.17 The Muttaraiyar held power in the Kaveri delta. They were subordinate to the Pallava kings of \_\_\_\_\_.

- Ans  1. Makotai  
 2. Kanchipuram  
 3. Thanjavur  
 4. Arikamedu

Question ID : 26433085218  
Status : Answered  
Chosen Option : 2

**Q.18 Identify the acid that convert zinc into zinc sulphate.**

- Ans  1. Hydrochloric acid  
 2. Nitric acid  
 3. Sulphuric acid  
 4. Acetic acid

Question ID : 26433091477  
Status : Answered  
Chosen Option : 3

**Q.19 Gunakanta Dutta Borbyan was awarded the Sangeet Natak Akademi Award in which dance form?**

- Ans  1. Kathak  
 2. Chhau  
 3. Kathakali  
 4. Sattriya

Question ID : 264330115865  
Status : Answered  
Chosen Option : 1

**Q.20 Which of the following dances is performed in Goa?**

- Ans  1. Jhoomar  
 2. Cheraw  
 3. Karma Naach  
 4. Fugdi

Question ID : 26433066530  
Status : Answered  
Chosen Option : 2

Section : Part-C-Elementary Mathematics

**Q.1 A shopkeeper listed the marked price of a table at Rs.2500. If he sold it at 20% discount and 10% additional discount, then what is the selling price of the table?**

- Ans  1. Rs.2,000  
 2. Rs.1,900  
 3. Rs.1,800  
 4. Rs.2,100

Question ID : 26433075657  
Status : Answered  
Chosen Option : 3

**Q.2** The average cost of an apple, an orange and a mango is Rs.36. The average cost of an apple and an orange is Rs.28 and that of an orange and a mango is Rs.32. The cost of an orange (in Rs.) is:

- Ans
- 1. 24
  - 2. 18
  - 3. 16
  - 4. 12

Question ID : 26433075719  
Status : Answered  
Chosen Option : 4

**Q.3** Find the mean proportional between 4 and 900.

- Ans
- 1. 60
  - 2. 90
  - 3. 30
  - 4. 120

Question ID : 26433076185  
Status : Answered  
Chosen Option : 1

**Q.4** Find the third proportional to 8 and 12

- Ans
- 1. 9
  - 2. 14
  - 3. 18
  - 4. 16

Question ID : 26433082392  
Status : Answered  
Chosen Option : 3

**Q.5** The average weight of a truck and four cars is 48 kg, which is reduced by 1 kg if the weight of the truck is excluded. What is the weight of the truck?

- Ans
- 1. 50 kg
  - 2. 52 kg
  - 3. 51 kg
  - 4. 53 kg

Question ID : 26433080102  
Status : Answered  
Chosen Option : 2



Q.6 Yash can do a piece of work in 49 days and Naman can do the same work in 35 days. Saurav can do the same work in 7 days. Find the total days required to complete the same work if they work on alternate days such that Yash works on the first day, Naman works on the second day, Saurav work on the third day and then again Yash works on the fourth day and so on.

- Ans
- 1. 118/7 days
  - 2. 116/7 days
  - 3. 117/7 days
  - 4. 114/7 days

Question ID : 264330116895  
Status : Answered  
Chosen Option : 4

Q.7 The marked price of a jacket is ₹3,500. A shopkeeper offers 5% discount on it and then again offers 15% discount on the new price, and then again offers 20% discount on the new price. How much one has to pay for it?

- Ans
- 1. ₹2,260
  - 2. ₹2,261
  - 3. ₹2,265
  - 4. ₹2,263

Question ID : 26433080172  
Status : Answered  
Chosen Option : 2

Q.8 Arun and Aditya can complete a work separately in 8 days and 12 days, respectively. After 2 days of working alone, Aditya leaves the work, In how many days Arun will complete the remaining work?

- Ans
- 1. 6 days
  - 2.  $7\frac{1}{3}$  days
  - 3. 7 days
  - 4.  $6\frac{2}{3}$  days

Question ID : 26433080343  
Status : Answered  
Chosen Option : 4

Q.9 Rs.11,500 is borrowed at compound interest at the rate of 5% per annum, compounding annually. What will be the amount to be paid after 2 years?

- Ans
- 1. Rs.12,678.75
  - 2. Rs.12,677.85
  - 3. Rs.12,687.75
  - 4. Rs.12,678

Question ID : 26433065090  
Status : Answered  
Chosen Option : 2

Q.10 If the increase in the percentage of the consumption of a commodity is 25% so that overall budget does not change, then the price of the commodity falls by:

- Ans
- 1. 35%
  - 2. 25%
  - 3. 20%
  - 4. 30%

Question ID : 26433079927  
Status : Answered  
Chosen Option : 3

Q.11 If the curved surface area of a sphere with radius  $R_1$  unit is the same as the total surface area of another hemisphere with radius  $R_2$ , then the  $R_2$  is:

- Ans
- 1.  $\frac{2}{\sqrt{3}} R_1$
  - 2.  $2R_1$
  - 3. same as  $R_1$
  - 4.  $\sqrt{3} R_1$

Question ID : 26433075209  
Status : Answered  
Chosen Option : 1

Q.12 A shopkeeper sells his old stock at 25 percent loss on cost price, but uses 30 percent less weight. What is his percentage profit or loss (consider up to two decimals)?

- Ans
- 1. Profit of 9.14 percent
  - 2. Loss of 7.14 percent
  - 3. Profit of 7.14 percent
  - 4. Loss of 9.14 percent

Question ID : 26433074222  
Status : Not Answered  
Chosen Option : --

Q.13 If A's income is 40 percent more than B's income, then what percentage does B earn less than A?

Ans

1.  $21\frac{3}{7}$  percent

2.  $25\frac{3}{7}$  percent

3.  $18\frac{4}{7}$  percent

4.  $28\frac{4}{7}$  percent

Question ID : 26433079848

Status : Answered

Chosen Option : 4

Q.14 A truck's value is reduced by 17 percent and is now worth Rs.33,32,948. What was its original price?

Ans  1. Rs.39,85,472

2. Rs.38,52,612

3. Rs.40,15,600

4. Rs.36,47,814

Question ID : 264330116815

Status : Not Answered

Chosen Option : --

Q.15 What is the number which, when increased by 20, is completely divisible by 18, 56 and 42?

Ans  1. 504

2. 484

3. 514

4. 524

Question ID : 26433080266

Status : Answered

Chosen Option : 4

Q.16 The greatest number which can divide 286, 1001 and 2420 is X. What is the value of X/2?

Ans  1. 6

2. 4.5

3. 5

4. 5.5

Question ID : 264330116663

Status : Not Answered

Chosen Option : --

Q.17 How many cubes of side 4 cm can be formed by melting a solid metallic cuboid of length 12 cm, breadth 8 cm and height 8 cm?

- Ans
- 1. 11
  - 2. 13
  - 3. 14
  - 4. 12

Question ID : 26433082998  
Status : Answered  
Chosen Option : 4

Q.18 In a 4 km race, A, B and C, each running at uniform speed, secured first, second and third position, respectively. If A beats B by 1 km and B beats C by 1 km, then by how many metres does A beat C in the same race?

- Ans
- 1. 1750 m
  - 2. 1700 m
  - 3. 1775 m
  - 4. 1725 m

Question ID : 26433063958  
Status : Not Answered  
Chosen Option : --

Q.19 What is the value of 35m/s in term of km/h?

- Ans
- 1. 144 km/h
  - 2. 96 km/h
  - 3. 126 km/h
  - 4. 106 km/h

Question ID : 26433075687  
Status : Answered  
Chosen Option : 3

Q.20 The population of a town was 2,50,000 three years ago. If it has increased by 3%, 4% and 6% in the last 3 years, find the present population of the town.

- Ans
- 1. 4,83,868
  - 2. 2,83,868
  - 3. 3,83,868
  - 4. 1,83,868

Question ID : 26433092034  
Status : Answered  
Chosen Option : 2

**Q.1** Select the most appropriate option to fill in the blank.

Everything Priyanka did in her academic \_\_\_\_\_ ended in vain.

- Ans
- 1. adamant
  - 2. attends
  - 3. attempts
  - 4. attestations

Question ID : 26433089356  
Status : Not Answered  
Chosen Option : --

**Q.2** Select the most appropriate meaning of the given idiom.

**Lose your marbles**

- Ans
- 1. To lose the wealth
  - 2. To waste the resources
  - 3. To become insane
  - 4. To be hopeful

Question ID : 26433073483  
Status : Not Answered  
Chosen Option : --

**Q.3** Select the most appropriate synonym of the given word.  
**Benefit**

- Ans
- 1. Genesis
  - 2. Advantage
  - 3. Rapture
  - 4. Injury

Question ID : 26433084679  
Status : Not Answered  
Chosen Option : --

**Q.4** Select the most appropriate ANTONYM of the given word.

**Dominate**

- Ans
- 1. Surrender
  - 2. Rules
  - 3. Orders
  - 4. Command

Question ID : 26433084750  
Status : Not Answered  
Chosen Option : --

Q.5 Select the most appropriate ANTONYM of the underlined word to fill in the blank.

Children were amused by the puppet show, but they were \_\_\_\_\_ with the Chairman's speech.

- Ans
- 1. bored
  - 2. gratified
  - 3. charmed
  - 4. encouraged

Question ID : 26433089067  
Status : Not Answered  
Chosen Option : --

Q.6 Select the most appropriate option that can substitute the underlined segment in the given sentence. If there is no need to substitute it, select 'No substitution'.

The students ran quick to get on the train.

- Ans
- 1. No substitution
  - 2. The students ran quickly
  - 3. The student run quickly
  - 4. The students runs quickly

Question ID : 26433088742  
Status : Not Answered  
Chosen Option : --

Q.7 Select the most appropriate synonym to substitute the underlined word in the given sentence.

Sivasubramanian Iyer was not perturbed, nor did he get angry with his wife, but instead, served me with his own hands and sat down beside me to eat his meal.

- Ans
- 1. appreciated
  - 2. composed
  - 3. apprehended
  - 4. disturbed

Question ID : 26433073864  
Status : Not Answered  
Chosen Option : --

Q.8 Select the most appropriate option that can substitute the underlined segment in the given sentence. If there is no need to substitute it, select 'No substitution'.

The weathermen felt that it was more hotter today.

- Ans
- 1. No substitution
  - 2. hotting
  - 3. most hotter
  - 4. hotter

Question ID : 26433089113  
Status : Not Answered  
Chosen Option : --

**Q.9** Select the most appropriate synonym to substitute the underlined word in the given sentence.

This bodyguard was like a firewall for the leader.

- Ans
- 1. forerunner
  - 2. perfectionist
  - 3. vanguard
  - 4. bulwark

Question ID : 26433074016  
Status : Not Answered  
Chosen Option : --

**Q.10** Parts of the following sentence have been given as options. One of them may contain an error. Select the part that contains the error from the given options. If you don't find any error, mark 'No error' as your answer.

The software detected an anomaly cause by the virus.

- Ans
- 1. cause by the virus
  - 2. an anomaly
  - 3. The software detected
  - 4. No error

Question ID : 26433090485  
Status : Not Answered  
Chosen Option : --

**Q.11** Select the INCORRECTLY spelt word.

- Ans
- 1. Contradict
  - 2. Arrogant
  - 3. Auspicious
  - 4. Geometry

Question ID : 26433073728  
Status : Not Answered  
Chosen Option : --

**Q.12** Parts of the given sentence have been given as options. One of them contains a spelling error. Select the option that rectifies the error.

Macaroni penguins have a distenctive yellow feather crest on their forehead.

- Ans
- 1. forhead
  - 2. distinctive
  - 3. penguens
  - 4. chrest

Question ID : 26433059584  
Status : Not Answered  
Chosen Option : --

Q.13 Select the most appropriate meaning of the given idiom.

**Bite off more than you can chew**

- Ans
- 1. Overcome gluttony
  - 2. Too courageous
  - 3. Destructive power
  - 4. Take on a task that you cannot finish

Question ID : 26433073995  
Status : Not Answered  
Chosen Option : --

Q.14 Select the most appropriate option that can substitute the underlined segment in the given sentence.

As a student of medicine, you have to learn the terminologies by heart.

- Ans
- 1. general agreements
  - 2. virtuous professions
  - 3. special expressions
  - 4. significant conditions

Question ID : 26433099874  
Status : Not Answered  
Chosen Option : --

Q.15 Select the most appropriate ANTONYM of the given word.

**Exhaust**

- Ans
- 1. Burn
  - 2. Empty
  - 3. Collect
  - 4. Restore

Question ID : 26433084894  
Status : Not Answered  
Chosen Option : --



**Comprehension:**

In the following passage some words have been deleted. Fill in the blanks with the help of the alternatives given. Select the most appropriate option for each number.

The Sentinelese, the world's most remote tribe have (1)\_\_\_\_\_ the interest of millions of people. They (2)\_\_\_\_\_ on North Sentinel, a little island covered with forests that is about the size of Manhattan. They continue to reject any interaction with outsiders and assault anyone who (3)\_\_\_\_\_. The Sentinelese hunt, collect, and fish in the forest (4)\_\_\_\_\_ the coast. They build boats, unlike the nearby Jarawa tribe, who only makes (5)\_\_\_\_\_ thin outrigger canoes that are 'too narrow to fit two feet in'. Since they are guided and propelled using a pole similar to a punt, these can only be used in shallow waters.

**SubQuestion No : 16****Q.16 Select the most appropriate answer for blank 1.****Ans** ✓ 1. sparked

✗ 2. provoked

✗ 3. enrolled

✗ 4. affected

Question ID : 26433089706

Status : Not Answered

Chosen Option : --

**Comprehension:**

In the following passage some words have been deleted. Fill in the blanks with the help of the alternatives given. Select the most appropriate option for each number.

The Sentinelese, the world's most remote tribe have (1)\_\_\_\_\_ the interest of millions of people. They (2)\_\_\_\_\_ on North Sentinel, a little island covered with forests that is about the size of Manhattan. They continue to reject any interaction with outsiders and assault anyone who (3)\_\_\_\_\_. The Sentinelese hunt, collect, and fish in the forest (4)\_\_\_\_\_ the coast. They build boats, unlike the nearby Jarawa tribe, who only makes (5)\_\_\_\_\_ thin outrigger canoes that are 'too narrow to fit two feet in'. Since they are guided and propelled using a pole similar to a punt, these can only be used in shallow waters.

**SubQuestion No : 17****Q.17 Select the most appropriate answer for blank 2.****Ans** ✓ 1. reside

✗ 2. belong

✗ 3. carry

✗ 4. visit

Question ID : 26433089707

Status : Not Answered

Chosen Option : --

**Comprehension:**

In the following passage some words have been deleted. Fill in the blanks with the help of the alternatives given. Select the most appropriate option for each number.

The Sentinelese, the world's most remote tribe have (1)\_\_\_\_\_ the interest of millions of people. They (2)\_\_\_\_\_ on North Sentinel, a little island covered with forests that is about the size of Manhattan. They continue to reject any interaction with outsiders and assault anyone who (3)\_\_\_\_\_. The Sentinelese hunt, collect, and fish in the forest (4)\_\_\_\_\_ the coast. They build boats, unlike the nearby Jarawa tribe, who only makes (5)\_\_\_\_\_ thin outrigger canoes that are 'too narrow to fit two feet in'. Since they are guided and propelled using a pole similar to a punt, these can only be used in shallow waters.

**SubQuestion No : 18**

**Q.18 Select the most appropriate answer for blank 3.**

- Ans  1. approaches  
 2. commences  
 3. addresses  
 4. corresponds

Question ID : 26433089708

Status : Not Answered

Chosen Option : --

**Comprehension:**

In the following passage some words have been deleted. Fill in the blanks with the help of the alternatives given. Select the most appropriate option for each number.

The Sentinelese, the world's most remote tribe have (1)\_\_\_\_\_ the interest of millions of people. They (2)\_\_\_\_\_ on North Sentinel, a little island covered with forests that is about the size of Manhattan. They continue to reject any interaction with outsiders and assault anyone who (3)\_\_\_\_\_. The Sentinelese hunt, collect, and fish in the forest (4)\_\_\_\_\_ the coast. They build boats, unlike the nearby Jarawa tribe, who only makes (5)\_\_\_\_\_ thin outrigger canoes that are 'too narrow to fit two feet in'. Since they are guided and propelled using a pole similar to a punt, these can only be used in shallow waters.

**SubQuestion No : 19**

**Q.19 Select the most appropriate answer for blank 4.**

- Ans  1. over  
 2. beside  
 3. across  
 4. along

Question ID : 26433089709

Status : Not Answered

Chosen Option : --

**Comprehension:**

In the following passage some words have been deleted. Fill in the blanks with the help of the alternatives given. Select the most appropriate option for each number.

The Sentinelese, the world's most remote tribe have (1)\_\_\_\_\_ the interest of millions of people. They (2)\_\_\_\_\_ on North Sentinel, a little island covered with forests that is about the size of Manhattan. They continue to reject any interaction with outsiders and assault anyone who (3)\_\_\_\_\_. The Sentinelese hunt, collect, and fish in the forest (4)\_\_\_\_\_ the coast. They build boats, unlike the nearby Jarawa tribe, who only makes (5)\_\_\_\_\_ thin outrigger canoes that are 'too narrow to fit two feet in'. Since they are guided and propelled using a pole similar to a punt, these can only be used in shallow waters.

**SubQuestion No : 20**

**Q.20 Select the most appropriate answer for blank 5.**

- Ans  1. exclusively  
 2. extremely  
 3. abundantly  
 4. knowingly

Question ID : 26433089710

Status : Not Answered

Chosen Option : --

**Section : Part-D-Hindi**

**Q.1 वे जन्मपर्यंत ब्रह्मचारी रहे।**

उपर्युक्त वाक्य में रेखांकित पद के स्थान पर निम्न में से कौन सा शब्द आ सकता है?

- Ans  1. आजन्म  
 2. जीवन के बाद  
 3. पुनर्जन्म  
 4. जीवन आरंभ होने के बाद

Question ID : 26433063057

Status : Answered

Chosen Option : 1

**Q.2 'हुक्का पानी बंद करना' मुहावरे का सही अर्थ है -**

- Ans  1. खाना देना बंद करना  
 2. नशा छोड़ना  
 3. जाति से बहिष्कृत करना  
 4. नशा करना

Question ID : 26433065931

Status : Answered

Chosen Option : 3

Q.3 निम्नलिखित वाक्य का शुद्ध रूप क्या होगा?  
'वे सब काल चक्र के पहिए के नीचे पिश गए।'

- Ans
- 1. वे सब कालचक्र के पहिए के नीचे पेसे गए।
  - 2. वे कालचक्र के नीचे पीसता गया।
  - 3. वे कालचक्र के पहिए के नीचे पीस गए।
  - 4. वे सब कालचक्र में पिस गए।

Question ID : 26433063075  
Status : Answered  
Chosen Option : 3

Q.4 'महादेवी वर्मा महान कवियत्री थीं।' इस वाक्य में अशुद्ध वर्तनी वाला शब्द है -

- Ans
- 1. कवियत्री
  - 2. वर्मा
  - 3. महादेवी
  - 4. महान

Question ID : 26433080902  
Status : Answered  
Chosen Option : 1

Q.5 नीचे दिए शब्द के लिए उचित वाक्यांश दिए गए विकल्पों में से चुनिए-  
अन्यमनस्क

- Ans
- 1. जो नया न हो
  - 2. जो पहले न हुआ हो
  - 3. किसी और स्थान पर
  - 4. जिसका मन किसी दूसरी ओर लगा हो

Question ID : 26433062388  
Status : Answered  
Chosen Option : 4

Q.6 'नाव' के पर्यायवाची शब्द से निम्न वाक्य पूर्ण कीजिए।  
नाविक \_\_\_\_\_ से नदी पार कराता है।

- Ans
- 1. रैन
  - 2. कश्ती
  - 3. तरु
  - 4. रेत

Question ID : 26433063086  
Status : Answered  
Chosen Option : 2

Q.7 भगवान विष्णु ने एक अवतार कूर्म के रूप में भी लिया था।  
उपरोक्त वाक्य में प्रयुक्त 'कूर्म' शब्द का पर्याय क्या होगा?

- Ans
- 1. श्वान
  - 2. सूकर
  - 3. कछुआ
  - 4. सिंह

Question ID : 26433080855  
Status : Answered  
Chosen Option : 3

Q.8 निम्नलिखित में से कौन सा सार्वनामिक विशेषण शब्द नहीं है?

- Ans
- 1. तुम्हारा
  - 2. जैसा
  - 3. मैं
  - 4. ऐसा

Question ID : 26433085054  
Status : Answered  
Chosen Option : 4

Q.9 निम्नलिखित विकल्पों में से कौन सा एक वाक्य संयोजक क्रिया-विशेषण से सम्बन्ध रखता है?

- Ans
- 1. जहाँ आप पढ़ेंगे, वहाँ मैं भी पढ़ूँगा।
  - 2. वह सो रहा था।
  - 3. वे लेते हुए थे।
  - 4. मैं जाग रहा हूँ।

Question ID : 26433062952  
Status : Answered  
Chosen Option : 1

Q.10 प्रत्यक्ष को प्रमाण की आवश्यकता नहीं होती।  
उपरोक्त वाक्य में रेखांकित शब्द के विलोप शब्द का चयन कीजिए।

- Ans
- 1. परोक्ष
  - 2. समक्ष
  - 3. ओक्षा
  - 4. दीर्घ

Question ID : 26433079641  
Status : Answered  
Chosen Option : 1

Q.11 निम्नलिखित वाक्य में रेखांकित शब्द के सही विलोम से दिए गए वाक्य के रिक्त स्थान की पूर्ति कीजिए।  
उसका रवैया दुलमुल नहीं है, वह अपनी बात पर सदैव \_\_\_\_\_ रहता है।

- Ans
- 1. निश्चित
  - 2. अवश
  - 3. अचल
  - 4. अटल

Question ID : 26433085003  
Status : Answered  
Chosen Option : 4

Q.12 निम्नलिखित वाक्य में रेखांकित अंश के स्थान पर सबसे उपयुक्त विकल्प निम्न में से कौन-सा होगा?  
शत्रु मैदान से दौड़ खड़ा हुआ

- Ans
- 1. उठ
  - 2. रवाना
  - 3. निकल
  - 4. भाग

Question ID : 26433072585  
Status : Answered  
Chosen Option : 4

Q.13 'घोड़े बेंचकर सोना' मुहावरे का सही अर्थ है -

- Ans
- 1. गहरी नींद सोना
  - 2. जिम्मेदारी न लेना
  - 3. नींद न आना
  - 4. खुश होना

Question ID : 26433065921  
Status : Answered  
Chosen Option : 1

Q.14 निम्नलिखित वाक्यांश के लिए उपयुक्त सार्थक शब्द चुनिए।  
भाप के कारण होने वाला अंधेरा

- Ans
- 1. अधियारा
  - 2. धुंध
  - 3. रात
  - 4. बूंद

Question ID : 26433073309  
Status : Answered  
Chosen Option : 2

Q.15 जिसका जन्म बाद में हुआ हो' वाक्यांश के लिए उपयुक्त शब्द क्या होगा?

- Ans  1. अग्रज  
 2. अनुज  
 3. अग्रजा  
 4. ज्येष्ठ

Question ID : 26433067068

Status : Answered

Chosen Option : 1

**Comprehension:**

प्रश्न 1 से 5 तक के उत्तर निम्नांकित गद्यावतरण के आधार पर दीजिए।  
जिन दिनों जीवन अपेक्षाकृत गतिहीन था, उन दिनों कथनी और करनी का विरोध उतना नहीं था, लेकिन ज्यों-ज्यों राजनीतिक और आर्थिक परिवर्तनों की रफ्तार तेज होती गयी, इस विरोध की उग्रता भी अधिकाधिक (1) होती गयी। आज जब हम (2) के दरवाजे पर खड़े हैं, तब हमें अपने इस आंतरिक विरोध का शमन करना ही पड़ेगा अन्यथा सर्वनाश अवश्यंभावी है। मानव - मन की अतल गहराई में हम यदि झाँक कर देखें तो वहाँ आज भी (3) की दमित वासनाएँ केंचुली मारे बैठी हैं। वाणी उसकी कितनी ही सांस्कारिक क्यों न हो गयी हो, पर (4) में मैल के पर्त और भी मोटे होते गए हैं। हमारे आचरण की तुलना में हमारे उद्गार इतने ऊँचे हैं कि उन्हें सुनकर आश्चर्य होता है। बात तो हम 'वसुधैव कुटुम्बकम्' की करते हैं, परंतु काम हमारे कुछ और होते हैं। सिद्धांत तो सहिष्णुता का बघारते हैं, लेकिन व्यवहार में हम चाहते हैं कि दूसरे भी वही सोचें, जो हम सोचते हैं - हमारा नेतृत्व और श्रेष्ठता बेझिझक स्वीकार करें। यह खतरे की स्थिति में है और यह खतरा बाहर नहीं, हमारे भीतर बैठा (5) की ताक में है।

SubQuestion No : 16

Q.16 निम्न विकल्पों में से 'प्रति' उपसर्ग वाले सर्वाधिक उपयुक्त शब्द का चयन कर रिक्त स्थान (1) की पूर्ति कीजिए।

- Ans  1. प्रत्यक्ष  
 2. प्रत्येक  
 3. प्रतिकार  
 4. प्रतिकूल

Question ID : 26433069956

Status : Answered

Chosen Option : 1

**Comprehension:**

प्रश्न 1 से 5 तक के उत्तर निम्नांकित गद्यावतरण के आधार पर दीजिए।  
जिन दिनों जीवन अपेक्षाकृत गतिहीन था, उन दिनों कथनी और करनी का विरोध उतना नहीं था, लेकिन ज्यों – ज्यों राजनीतिक और आर्थिक परिवर्तनों की रफ्तार तेज होती गयी, इस विरोध की उग्रता भी अधिकाधिक (1) \_\_\_\_\_ होती गयी। आज जब हम (2) \_\_\_\_\_ के दरवाजे पर खड़े हैं, तब हमें अपने इस आंतरिक विरोध का शमन करना ही पड़ेगा अन्यथा सर्वनाश अवश्यंभावी है। मानव - मन की अतल गहराई में हम यदि झाँक कर देखें तो वहाँ आज भी (3) \_\_\_\_\_ की दमित वासनाएँ केंचुली मारे बैठी हैं। वाणी उसकी कितनी ही सांस्कारिक क्यों न हो गयी हो, पर (4) \_\_\_\_\_ में मैल के पर्त और भी मोटे होते गए हैं। हमारे आचरण की तुलना में हमारे उद्गार इतने ऊँचे हैं कि उन्हें सुनकर आश्चर्य होता है। बात तो हम 'वसुधैव कुटुम्बकम्' की करते हैं, परंतु काम हमारे कुछ और होते हैं। सिद्धांत तो सहिष्णुता का बघारते हैं, लेकिन व्यवहार में हम चाहते हैं कि दूसरे भी वही सोचे, जो हम सोचते हैं – हमारा नेतृत्व और श्रेष्ठता बेझिझक स्वीकार करे। यह खतरे की स्थिति में है और यह खतरा बाहर नहीं, हमारे भीतर बैठा (5) \_\_\_\_\_ की ताक में है।

**SubQuestion No : 17**

Q.17 निम्न विकल्पों में से उपयुक्त शब्द का चयन कर रिक्त स्थान (2) की पूर्ति कीजिए।

- Ans  1. कलियुग  
 2. अणुयुग  
 3. अंधायुग  
 4. मध्ययुग

Question ID : 26433069957

Status : Answered

Chosen Option : 1

**Comprehension:**

प्रश्न 1 से 5 तक के उत्तर निम्नांकित गद्यावतरण के आधार पर दीजिए।  
जिन दिनों जीवन अपेक्षाकृत गतिहीन था, उन दिनों कथनी और करनी का विरोध उतना नहीं था, लेकिन ज्यों – ज्यों राजनीतिक और आर्थिक परिवर्तनों की रफ्तार तेज होती गयी, इस विरोध की उग्रता भी अधिकाधिक (1) \_\_\_\_\_ होती गयी। आज जब हम (2) \_\_\_\_\_ के दरवाजे पर खड़े हैं, तब हमें अपने इस आंतरिक विरोध का शमन करना ही पड़ेगा अन्यथा सर्वनाश अवश्यंभावी है। मानव - मन की अतल गहराई में हम यदि झाँक कर देखें तो वहाँ आज भी (3) \_\_\_\_\_ की दमित वासनाएँ केंचुली मारे बैठी हैं। वाणी उसकी कितनी ही सांस्कारिक क्यों न हो गयी हो, पर (4) \_\_\_\_\_ में मैल के पर्त और भी मोटे होते गए हैं। हमारे आचरण की तुलना में हमारे उद्गार इतने ऊँचे हैं कि उन्हें सुनकर आश्चर्य होता है। बात तो हम 'वसुधैव कुटुम्बकम्' की करते हैं, परंतु काम हमारे कुछ और होते हैं। सिद्धांत तो सहिष्णुता का बघारते हैं, लेकिन व्यवहार में हम चाहते हैं कि दूसरे भी वही सोचे, जो हम सोचते हैं – हमारा नेतृत्व और श्रेष्ठता बेझिझक स्वीकार करे। यह खतरे की स्थिति में है और यह खतरा बाहर नहीं, हमारे भीतर बैठा (5) \_\_\_\_\_ की ताक में है।

**SubQuestion No : 18**

Q.18 'गुफाओं में निवास करनेवाले प्रागैतिहासिक मानव' वाक्यांश के लिए प्रयुक्त होने वाले एक शब्द से रिक्त स्थान (3) की पूर्ति कीजिए।

- Ans  1. महामानव  
 2. गुहामानव  
 3. गूढ़मानव  
 4. गैरिकमानव

Question ID : 26433069958

Status : Answered

Chosen Option : 3



**Comprehension:**

प्रश्न 1 से 5 तक के उत्तर निम्नांकित गद्यावतरण के आधार पर दीजिए।  
जिन दिनों जीवन अपेक्षाकृत गतिहीन था, उन दिनों कथनी और करनी का विरोध उतना नहीं था, लेकिन ज्यों – ज्यों राजनीतिक और आर्थिक परिवर्तनों की रफ्तार तेज होती गयी, इस विरोध की उग्रता भी अधिकाधिक (1) \_\_\_\_\_ होती गयी। आज जब हम (2) \_\_\_\_\_ के दरवाजे पर खड़े हैं, तब हमें अपने इस आंतरिक विरोध का शमन करना ही पड़ेगा अन्यथा सर्वनाश अवश्यभावी है। मानव - मन की अतल गहराई में हम यदि झाँक कर देखें तो वहाँ आज भी (3) \_\_\_\_\_ की दमित वासनाएँ केंचुली मारे बैठी हैं। वाणी उसकी कितनी ही सांस्कारिक क्यों न हो गयी हो, पर (4) \_\_\_\_\_ में मैल के पर्त और भी मोटे होते गए हैं। हमारे आचरण की तुलना में हमारे उद्गार इतने ऊँचे हैं कि उन्हें सुनकर आश्चर्य होता है। बात तो हम 'वसुधैव कुटुम्बकम्' की करते हैं, परंतु काम हमारे कुछ और होते हैं। सिद्धांत तो सहिष्णुता का बघारते हैं, लेकिन व्यवहार में हम चाहते हैं कि दूसरे भी वही सोचे, जो हम सोचते हैं – हमारा नेतृत्व और श्रेष्ठता बेझिझक स्वीकार करे। यह खतरे की स्थिति में है और यह खतरा बाहर नहीं, हमारे भीतर बैठा (5) \_\_\_\_\_ की ताक में है।

**SubQuestion No : 19**

Q.19 निम्नलिखित विकल्पों में से उपयुक्त शब्द चुनकर रिक्त स्थान (4) की पूर्ति कीजिए।

- Ans  1. मानवजगत  
 2. पशुजगत  
 3. अंतर्जगत  
 4. बाह्यजगत

Question ID : 26433069959

Status : Answered

Chosen Option : 1

**Comprehension:**

प्रश्न 1 से 5 तक के उत्तर निम्नांकित गद्यावतरण के आधार पर दीजिए।  
जिन दिनों जीवन अपेक्षाकृत गतिहीन था, उन दिनों कथनी और करनी का विरोध उतना नहीं था, लेकिन ज्यों – ज्यों राजनीतिक और आर्थिक परिवर्तनों की रफ्तार तेज होती गयी, इस विरोध की उग्रता भी अधिकाधिक (1) \_\_\_\_\_ होती गयी। आज जब हम (2) \_\_\_\_\_ के दरवाजे पर खड़े हैं, तब हमें अपने इस आंतरिक विरोध का शमन करना ही पड़ेगा अन्यथा सर्वनाश अवश्यभावी है। मानव - मन की अतल गहराई में हम यदि झाँक कर देखें तो वहाँ आज भी (3) \_\_\_\_\_ की दमित वासनाएँ केंचुली मारे बैठी हैं। वाणी उसकी कितनी ही सांस्कारिक क्यों न हो गयी हो, पर (4) \_\_\_\_\_ में मैल के पर्त और भी मोटे होते गए हैं। हमारे आचरण की तुलना में हमारे उद्गार इतने ऊँचे हैं कि उन्हें सुनकर आश्चर्य होता है। बात तो हम 'वसुधैव कुटुम्बकम्' की करते हैं, परंतु काम हमारे कुछ और होते हैं। सिद्धांत तो सहिष्णुता का बघारते हैं, लेकिन व्यवहार में हम चाहते हैं कि दूसरे भी वही सोचे, जो हम सोचते हैं – हमारा नेतृत्व और श्रेष्ठता बेझिझक स्वीकार करे। यह खतरे की स्थिति में है और यह खतरा बाहर नहीं, हमारे भीतर बैठा (5) \_\_\_\_\_ की ताक में है।

**SubQuestion No : 20**

Q.20 निम्न विकल्पों में से 'मौका' शब्द के पर्यायवाची द्वारा रिक्त स्थान (5) की पूर्ति कीजिए।

- Ans  1. विलंब  
 2. अवसर  
 3. सारांश  
 4. सहायता

Question ID : 26433069960

Status : Not Answered

Chosen Option : --

# Constable GD in CAPFs SSF Rifleman GD in Assam Rifles and Sepoy in NCB Examination 2022

Roll Number	<b>KD Job Updates</b>
Candidate Name	<b>KD Job Updates</b>
Venue Name	iON Digital Zone iDZ 1 Sector 62
Exam Date	16/01/2023
Exam Time	9:00 AM - 10:00 AM
Subject	Constable GD Examination 2022

Section : **Part-A-General Intelligence and Reasoning**

**Q.1** Three statements are given followed by three conclusions numbered I, II and III. Assuming the statements to be true, even if they seem to be at variance with commonly known facts, decide which of the conclusions logically follow(s) from the statements.

Statements:

All stems are leaves.

All fruits are leaves.

All leaves are trunks.

Conclusions:

I. All fruits are trunks.

II. All trunks are stems.

III. Some trunks are fruits.

- Ans
- 1. Only conclusions II and III follow
  - 2. Only conclusions I and II follow
  - 3. Only conclusions I and III follow
  - 4. All conclusions follow

Question ID : 26433082311

Status : Answered

Chosen Option : 3

**Q.2** Which of the following terms will replace the question mark (?) in the given series?  
BGR, CIV, ELZ, HPD, LUH, ?

- Ans
- 1. QBL
  - 2. QAK
  - 3. QBK
  - 4. QAL

Question ID : 26433069453

Status : Answered

Chosen Option : 4

Q.3 Select the option that is related to the fifth letter-cluster in the same way as the second letter-cluster is related to the first letter-cluster and the fourth letter-cluster is related to the third letter-cluster.

QPON : RRRR :: IJGK : JLJO :: PKON : ?

- Ans  1. QMRR  
 2. RQRM  
 3. MQRR  
 4. RRMQ

Question ID : 26433080463  
Status : Answered  
Chosen Option : 1

Q.4 Select the correct mirror image of the given figure when the mirror is placed at MN as shown below.

Sa65Ge784RT  
M  
|  
N

- Ans  1. T1A8V9G2D62  
 2. tR48V382D62  
 3. tR48V9G2D62  
 4. TR48V9G2D62

Question ID : 26433085545  
Status : Answered  
Chosen Option : 4

Q.5 Select the number from among the given options that can replace the question mark (?) in the following series.  
83, 299, 424, 488, ?

- Ans  1. 415  
 2. 515  
 3. 625  
 4. 589

Question ID : 26433074536  
Status : Answered  
Chosen Option : 2

**Q.6** Select the option that is related to the fifth term in the same way as the second term is related to the first term and the fourth term is related to the third term.  
BIND : FFKH :: ROMP : VLJT :: SPUN : ?

- Ans  1. WMRR  
 2. VLRS  
 3. VLQR  
 4. WMQS

Question ID : 26433058010  
Status : Answered  
Chosen Option : 1

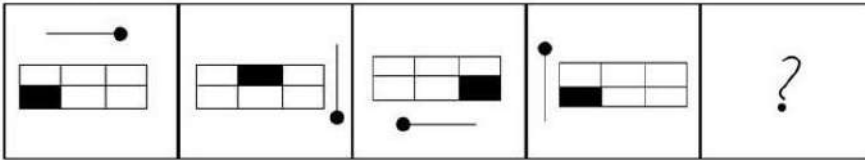
**Q.7** Select the correct combination of mathematical signs to sequentially replace the \* signs and to balance the given equation.  
 $11 * 10 * 10 * 240 * 2$

- Ans  1.  $\times, \div, =, +$   
 2.  $\times, +, =, \div$   
 3.  $=, +, \div, \times$   
 4.  $\div, \times, =, +$

Question ID : 26433094993  
Status : Answered  
Chosen Option : 2

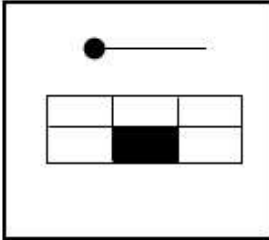
KD Job Updates

**Q.8** : Select the figure that will come in place of the question mark (?) in the following figure series.

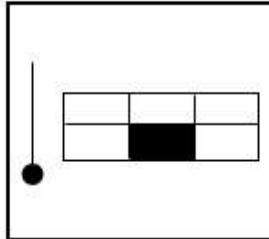


**Ans**

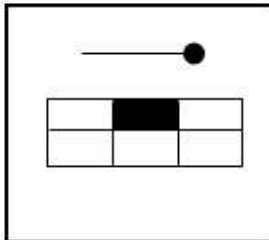
✗ 1.



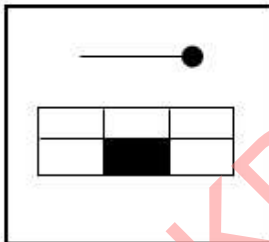
✗ 2.



✓ 3.



✗ 4.



Question ID : 26433081692

Status : Answered

Chosen Option : 3

**Q.9** Seven people, A, B, C, D, E, F and G are sitting in a straight row, facing north. A sits second from the left. Only two people sit between A and C. Only three people sit between D and F and D is an immediate neighbour of A. B is an immediate neighbour of D and E is not an immediate neighbour of C. Who sits to the extreme left?

**Ans** ✗ 1. D

✗ 2. G

✗ 3. F

✓ 4. E

Question ID : 26433056931

Status : Answered

Chosen Option : 4

Q.10 In a certain code language, 'grasshopper ant' is coded as 'ja do', 'seed blade' is coded as 'ju fo', 'blade ant' is coded as 'fo do', and 'grasshopper seed' is coded as 'ja ju'. What is the code for 'blade'?

- Ans  1. fo  
 2. zu  
 3. ja  
 4. do

Question ID : 26433069041  
Status : Answered  
Chosen Option : 1

Q.11 Which two signs should be interchanged to make the below equation mathematically correct?

$$48 + 36 - 81 \times 9 \div 2 = 66$$

- Ans  1. + and -  
 2.  $\times$  and +  
 3.  $\div$  and  $\times$   
 4.  $\div$  and -

Question ID : 264330117536  
Status : Answered  
Chosen Option : 3

Q.12 Which of the following letter-clusters will replace the question mark (?) in the given series?

DHVV, GKSV, ?, MQMP, PTJM

- Ans  1. JNPS  
 2. JPMR  
 3. KNPR  
 4. JNQS

Question ID : 26433076440  
Status : Answered  
Chosen Option : 1

Q.13 Six students are sitting around a circular table facing the centre. F is an immediate neighbour of A. D sits second to the right of E. B is an immediate neighbour of E and sits second to the right of C. F sits second to the right of D. A is not an immediate neighbour of E. Who sits to the immediate left of E?

- Ans  1. C  
 2. F  
 3. A  
 4. B

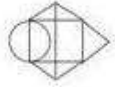
Question ID : 26433092767  
Status : Answered  
Chosen Option : 1

Q.14 Select the option figure in which the given figure is embedded. (Rotation is NOT allowed).

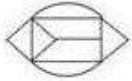


Ans

✗ 1.



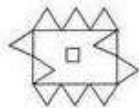
✓ 2.



✗ 3.



✗ 4.



Question ID : 26433070207

Status : Answered

Chosen Option : 2

Q.15 Looking at a photograph, Anjali said, "He is the only son of my father." How is the man in the photograph related to Anjali?

Ans ✓ 1. Brother

✗ 2. Father's father

✗ 3. Son

✗ 4. Mother's father

Question ID : 26433074601

Status : Answered

Chosen Option : 1

Q.16 Select the option that is related to the third term in the same way as the second term is related to the first term and the sixth term is related to the fifth term.  
13 : 225 :: 16 : ? :: 17 : 361

Ans ✗ 1. 376

✓ 2. 324

✗ 3. 345

✗ 4. 328

Question ID : 26433069094

Status : Answered

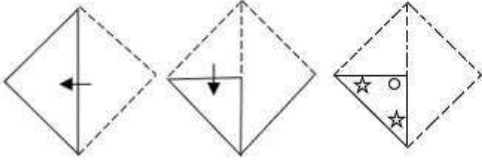
Chosen Option : 2

Q.17 Which of the following numbers will replace the question mark (?) in the given series?  
10, 11, 15, 42, 58, 183, ?

- Ans
- 1. 218
  - 2. 217
  - 3. 220
  - 4. 219

Question ID : 26433085641  
Status : Answered  
Chosen Option : 4

Q.18 A paper is folded and cut as shown below. How will it appear when unfolded?



Ans

- 1.
- 2.
- 3.
- 4.

KD Job Updates

Question ID : 26433090954  
Status : Answered  
Chosen Option : 4



Q.19 In a certain code the word 'BARK' is numerically coded as 5132. The word 'BEND' is numerically coded as 5749. How is the word 'BEARD' numerically coded in the same code?

- Ans
- 1. 57123
  - 2. 51739
  - 3. 57132
  - 4. 57139

Question ID : 26433090107  
Status : Answered  
Chosen Option : 4

Q.20 Which of the following options represents the correct order of the given words as they would appear in the English dictionary?

1. Glob
2. Globule
3. Global
4. Globe
5. Gloom

- Ans
- 1. 3, 4, 2, 1, 5
  - 2. 1, 3, 4, 2, 5
  - 3. 1, 3, 4, 5, 2
  - 4. 1, 2, 4, 3, 5

Question ID : 26433086968  
Status : Answered  
Chosen Option : 2

Section : Part-B-General Knowledge and General awareness

Q.1 The World Chess Champion Vishwanathan Anand belongs to which Country?

- Ans
- 1. India
  - 2. Sri Lanka
  - 3. Nepal
  - 4. Bangladesh

Question ID : 264330116275  
Status : Answered  
Chosen Option : 1

Q.2 As of 10 April 2022, how many general elections have been held to the Lok Sabha?

- Ans
- 1. 19
  - 2. 15
  - 3. 21
  - 4. 17

Question ID : 26433054550  
Status : Answered  
Chosen Option : 4

Q.3 Plastids containing \_\_\_\_\_ pigment chlorophyll are called chloroplasts.

- Ans
- 1. brown
  - 2. yellow
  - 3. green
  - 4. colourless

Question ID : 264330115240  
Status : Answered  
Chosen Option : 3

Q.4 Who among the following was awarded the Sangeet Natak Akademi Award in 2001?

- Ans
- 1. Sonal Mansingh
  - 2. Anuradha Pandey
  - 3. M.R Krishnamurthy
  - 4. Alarmel Valli

Question ID : 264330115861  
Status : Answered  
Chosen Option : 3

Q.5 \_\_\_\_\_, who lived in the court of Kanishka, composed a biography of the Buddha, the Buddhacharita.

- Ans
- 1. Mathara
  - 2. Nagarjuna
  - 3. Ashvaghosha
  - 4. Samgharaksha

Question ID : 26433089862  
Status : Answered  
Chosen Option : 3

Q.6 \_\_\_\_\_ restrict/s imports and help/s domestic producers from foreign competition.

(A) Tariffs  
(B) Quotas

- Ans
- 1. Neither A nor B
  - 2. Both A and B
  - 3. Only A
  - 4. Only B

Question ID : 26433054781  
Status : Answered  
Chosen Option : 2

**Q.7 Which industry does aluminium smelting belong to?**

- Ans
- 1. textile Industry
  - 2. chemical industry
  - 3. sugar Industry
  - 4. metallurgical industry

Question ID : 264330115570  
Status : Answered  
Chosen Option : 4

**Q.8 Which of the following is an outer planet of the solar system?**

- Ans
- 1. Venus
  - 2. Earth
  - 3. Mercury
  - 4. Saturn

Question ID : 26433087886  
Status : Answered  
Chosen Option : 4

**Q.9 Which of the following dance forms is associated with Sikkim?**

- Ans
- 1. Tashi Sabdo
  - 2. Munari
  - 3. Bhangra
  - 4. Kolattam

Question ID : 26433071689  
Status : Answered  
Chosen Option : 1

**Q.10 The Goods and Services Tax, Act commenced from\_\_\_\_\_.**

- Ans
- 1. 1 July 2017
  - 2. 1 April 2018
  - 3. 1 July 2016
  - 4. 1 April 2016

Question ID : 264330116207  
Status : Answered  
Chosen Option : 1

**Q.11 How many elements were known when Mendeleev started his work?**

- Ans
- 1. 73
  - 2. 53
  - 3. 63
  - 4. 93

Question ID : 26433087852  
Status : Answered  
Chosen Option : 3

**Q.12 Which neighbouring country of India is NOT a part of Commonwealth Games?**

- Ans  1. China  
 2. Bangladesh  
 3. Pakistan  
 4. Sri Lanka

Question ID : 264330116099  
Status : Answered  
Chosen Option : 2

**Q.13 Which of the following harvest festivals is primarily celebrated by the people of western Odisha?**

- Ans  1. Onam  
 2. Gudi Padwa  
 3. Wangala  
 4. Nuakhai

Question ID : 26433094895  
Status : Answered  
Chosen Option : 2

**Q.14 Which of the following is a stroke use in swimming?**

- Ans  1. Shark  
 2. Butterfly  
 3. Lion  
 4. Dog

Question ID : 26433089941  
Status : Answered  
Chosen Option : 2

**Q.15 The 42nd Amendment Act in 1976 inserted which new Part in the Indian Constitution?**

- Ans  1. Part II A  
 2. Part I A  
 3. Part IV A  
 4. Part III A

Question ID : 26433089949  
Status : Answered  
Chosen Option : 3

**Q.16 Which political leader won the bypoll election from Gola Gokarannath constituency in Uttar Pradesh, in November 2022?**

- Ans  1. Piyush Goyal  
 2. Vikram Singh Saini  
 3. Azam Khan  
 4. Aman Giri

Question ID : 264330114971  
Status : Answered  
Chosen Option : 2

**Q.17 Who has been appointed as the Governor of West Bengal in November 2022?**

- Ans  1. Jagdeep Dhankhar  
 2. C. V. Ananda Bose  
 3. La. Ganesan  
 4. D.Y. Patil

Question ID : 264330115026  
Status : Answered  
Chosen Option : 3

**Q.18 Jallianwala Bagh massacre happened in 1919. Where is Jallianwala Bagh located?**

- Ans  1. Haryana  
 2. Uttar Pradesh  
 3. Madhya Pradesh  
 4. Punjab

Question ID : 264330115704  
Status : Answered  
Chosen Option : 4

**Q.19 The interest rate at which the Reserve Bank absorbs liquidity from banks against the collateral of eligible government securities under the LAF is called the \_\_\_\_\_.**

- Ans  1. Rent rate  
 2. Statutory rate  
 3. Repo rate  
 4. Reverse repo rate

Question ID : 264330115323  
Status : Answered  
Chosen Option : 2

Q.20 परंपरागत आदानों का उपयोग और आधुनिक तकनीकों की अनुपस्थिति कृषि उत्पादकता को \_\_\_\_\_ की ओर ले जाती है।

- Ans
- 1. सर्वोच्च स्तर
  - 2. उच्च स्तर
  - 3. निम्न स्तर
  - 4. ईष्टतम स्तर

Question ID : 264330115433  
Status : Answered  
Chosen Option : 3

Section : Part-C-Elementary Mathematics

Q.1 S buys sugar for Rs.40 per kg and sells at Rs. x per kg. Due to a fault in the weighing machine, it shows 1 kg when the actual weight is 800 gm. What is the value of x per kg if his profit percentage is 30%?

- Ans
- 1. 48.6
  - 2. 46.1
  - 3. 41.6
  - 4. 52.1

Question ID : 26433071255  
Status : Answered  
Chosen Option : 3

Q.2 The difference in compound interest, under annual compounding, and simple interest on a certain sum at the same rate of interest in 2 years is 144% of the sum. Find the rate of interest per annum.

- Ans
- 1. 15%
  - 2. 100%
  - 3. 120%
  - 4. 20%

Question ID : 26433081724  
Status : Answered  
Chosen Option : 3

Q.3 What is the height of a solid cylinder whose radius is 7 cm and total surface area is  $1144\text{cm}^2$ ? (Use  $\pi = \frac{22}{7}$ )

- Ans
- 1. 19 cm
  - 2. 22 cm
  - 3. 12 cm
  - 4. 18 cm

Question ID : 26433074945  
Status : Answered  
Chosen Option : 1

Q.4 A man rows upstream 15 km and downstream 18 km, he takes 3 hours each time. The speed of the current is:

- Ans
- 1.  $\frac{1}{2}$  km/h
  - 2.  $\frac{3}{2}$  km/h
  - 3. 1 km/h
  - 4. 2 km/h

Question ID : 26433081045  
Status : Answered  
Chosen Option : 1

Q.5 The radius of a hemisphere is 21 cm. Its volume (in  $\text{cm}^3$ ) will be:  
(Use  $\pi = \frac{22}{7}$ )

- Ans
- 1. 19404
  - 2. 20112
  - 3. 21109
  - 4. 22101

Question ID : 26433085769  
Status : Answered  
Chosen Option : 1

Q.6 M can do a piece of work in 12 days and N in 24 days. They begin together, but M leaves the work 6 days before the completion of the work. Find the total number of days to complete the entire work.

- Ans
- 1. 10 days
  - 2. 12 days
  - 3. 7 days
  - 4. 6 days

Question ID : 264330116891  
Status : Answered  
Chosen Option : 2

Q.7 The population of a village is 24000. If it is expected to decrease by 4 percent the next year, then what will be the population of the village next year?

- Ans
- 1. 23520
  - 2. 22080
  - 3. 22560
  - 4. 23040

Question ID : 264330116811  
Status : Answered  
Chosen Option : 4

Q.8

Find the LCM of  $\frac{2}{5}$ ,  $\frac{4}{15}$  and  $\frac{6}{25}$ .

Ans

1.  $\frac{12}{7}$

2.  $\frac{11}{5}$

3.  $\frac{12}{5}$

4.  $\frac{5}{12}$

Question ID : 26433090315

Status : Answered

Chosen Option : 3

Q.9 Ravi can decorate a wall in 6 hours, while Ankita can decorate the same wall in 10 hours. In how many hours will they decorate the wall working simultaneously?

Ans  1. 4.75 hours

2. 4 hours

3. 3 hours

4. 3.75 hours

Question ID : 26433080341

Status : Answered

Chosen Option : 4

Q.10 A dealer marked the price of an item 45% more than its cost price and sold it by allowing a discount of 20%. Find his profit percentage.

Ans  1. 30%

2. 25%

3. 20%

4. 16%

Question ID : 26433083039

Status : Answered

Chosen Option : 4



Q.11 In a bag of rice of Rs.70 per kg, two different types are mixed. First type of rice is 8 kg in quantity of Rs.60 per kg, while the second type of rice is 4 kg in quantity. What is the price per kg of the second type of rice?

- Ans
- 1. Rs.75
  - 2. Rs.65
  - 3. Rs.80
  - 4. Rs.90

Question ID : 26433081638  
Status : Answered  
Chosen Option : 4

Q.12 If the length of a rectangle is reduced by 15% and breadth is increased by 10%, what is the percentage change in the area of the rectangle?

- Ans
- 1. 5.6% decrement
  - 2. 5.6% increment
  - 3. 6.5% decrement
  - 4. 6.5% increment

Question ID : 26433080293  
Status : Answered  
Chosen Option : 3

Q.13 A store announces the following three schemes to sell its articles. Which of these gives the maximum discount to the buyer?

- A. Two successive discounts of 20% and 24%
- B. Buy 5 get 3 free
- C. Buy 13 get 7 free

- Ans
- 1. All are equal
  - 2. B
  - 3. C
  - 4. A

Question ID : 26433075763  
Status : Answered  
Chosen Option : 4

Q.14 Rani goes to school from home at a certain speed and returns to home at the speed of 50 km/h. If the distance between her home and school is 20 km and the average speed of the whole journey is 37.5 km/h, then what is her speed from home to school?

- Ans
- 1. 35 km/h
  - 2. 40 km/h
  - 3. 30 km/h
  - 4. 45 km/h

Question ID : 26433075644  
Status : Answered  
Chosen Option : 3

Q.15 What principal will amount to Rs.5,324 in 2 years, when the interest is compounded at 10% per annum, compounding annually?

- Ans  1. Rs.4,400  
 2. Rs.4,324  
 3. Rs.4,420  
 4. Rs.4,440

Question ID : 26433083045  
Status : Answered  
Chosen Option : 1

Q.16 A bike takes 3 hours to cover a distance of 162 km. What distance will it cover in 5 hours?

- Ans  1. 240 km  
 2. 292 km  
 3. 301 km  
 4. 270 km

Question ID : 26433080121  
Status : Answered  
Chosen Option : 4

Q.17 A dishonest merchant uses a false weight of 200 gm instead of 250 gm. What is his profit percentage?

- Ans  1. 15%  
 2. 25%  
 3. 20%  
 4. 10%

Question ID : 26433075725  
Status : Answered  
Chosen Option : 2

Q.18 A boat covers a distance of 375 metres in upstream in 30 min, and returns back to the starting point in 18 min. Find the ratio of the speed of the boat in still water and the speed of the stream.

- Ans  1. 5 : 6  
 2. 7 : 13  
 3. 13 : 7  
 4. 4 : 1

Question ID : 26433079958  
Status : Answered  
Chosen Option : 4

Q.19 If  $a : b = 2 : 7$  and 343 is the third proportional to  $a$  and  $b$ , then the value of  $b - a$  is:

- Ans  1. 98  
 2. 70  
 3. 49  
 4. 126

Question ID : 26433079942  
Status : Answered  
Chosen Option : 2

Q.20 Evaluate  $65 \div 13 \times 4 + (35 \div 7 \times 9)^2 + 100 \div 5$  of  $4 \times 80$ .

- Ans  1. 2045  
 2. 2445  
 3. 2345  
 4. 2545

Question ID : 26433075109  
Status : Answered  
Chosen Option : 2

Section : Part-D-English

Q.1 Select the most appropriate option that can substitute the underlined segment in the given sentence.

If we have to sending a mail today, we shall get a reply in two days.

- Ans  1. If we would send a mail today  
 2. If we send a mail today  
 3. If we will send a mail today  
 4. If we have sending a mail today

Question ID : 26433092288  
Status : Not Answered  
Chosen Option : --

Q.2 Select the option that expresses the given sentence in past tense form.

The home nurse is expecting a salary hike from the relatives of the new family.

- Ans  1. The home nurse will be expecting a salary hike from the relatives of the new family.  
 2. The home nurse expects a salary hike from the relatives of the new family.  
 3. The home nurse was expecting a salary hike from the relatives of the new family.  
 4. The home nurse has been expecting a salary hike from the relatives of the new family.

Question ID : 26433089296  
Status : Not Answered  
Chosen Option : --

**Q.3** Select the word segment that substitutes (replaces) the bracketed word segment correctly and completes the sentence meaningfully.

The thief who (have taken the pony) was found guilty by the jury.

- Ans
- 1. has took the pony
  - 2. had taken the pony
  - 3. have took the pony
  - 4. has taken the pony

Question ID : 26433088962  
Status : Not Answered  
Chosen Option : --

**Q.4** Select the MISSPELT word.

- Ans
- 1. Extrime
  - 2. Eccentricity
  - 3. Electricity
  - 4. Excite

Question ID : 26433086334  
Status : Not Answered  
Chosen Option : --

**Q.5** Select the most appropriate meaning of the given idiom.

To be in the doldrums

- Ans
- 1. To be in high energy and happiness
  - 2. To be in utter confusion
  - 3. To be in low and dull spirits
  - 4. To be in helpless condition

Question ID : 26433073479  
Status : Not Answered  
Chosen Option : --

**Q.6** Select the most appropriate option to fill in the blank.

I am born and \_\_\_\_\_ in a cultured family.

- Ans
- 1. bare
  - 2. bread
  - 3. bred
  - 4. beard

Question ID : 26433060330  
Status : Not Answered  
Chosen Option : --

Q.7 Select the most appropriate ANTONYM of the given word.

Cease

- Ans  1. Terminate  
 2. Stop  
 3. Commence  
 4. Quit

Question ID : 26433074053  
Status : Not Answered  
Chosen Option : --

Q.8 Select the most appropriate option that can substitute the underlined segment in the given sentence.

There is a few rice left in the cooker.

- Ans  1. fewest rice left in  
 2. little rice left in  
 3. less rice left on  
 4. any rice left in

Question ID : 26433099867  
Status : Not Answered  
Chosen Option : --

Q.9 Select the most appropriate meaning of the given idiom.

The best thing since sliced bread

- Ans  1. A really good invention  
 2. A thoroughly examined food  
 3. An openly performed confession  
 4. A sincerely made apology

Question ID : 26433073490  
Status : Not Answered  
Chosen Option : --

Q.10 Select the most appropriate option to complete the given sentence.

Mechanical Engineering students from IIT, Madras, have developed an unnamed sailing boat that can reach any given destination \_\_\_\_\_.

- Ans  1. highly  
 2. autonomously  
 3. verbally  
 4. collaboratively

Question ID : 26433089089  
Status : Not Answered  
Chosen Option : --

Q.11 Select the most appropriate synonym of the word given in the brackets to fill in the blank.

Consuming coffee every day can have \_\_\_\_\_ (negative) effects on one's health.

- Ans
- 1. hospitable
  - 2. adverse
  - 3. despairing
  - 4. arbitrary

Question ID : 26433071889  
Status : Not Answered  
Chosen Option : --

Q.12 Select the most appropriate synonym of the underlined word in the given sentence.

Instead of studying rules and definitions, Helen acquired language through experience and habit.

- Ans
- 1. Obtained
  - 2. Forfeited
  - 3. Admired
  - 4. Awarded

Question ID : 26433084892  
Status : Not Answered  
Chosen Option : --

Q.13 Select the most appropriate ANTONYM of the word given in the bracket to fill in the blank.

She was too (feeble)\_\_\_\_\_ to leave her room.

- Ans
- 1. wimpy
  - 2. effete
  - 3. strong
  - 4. asthenic

Question ID : 26433059597  
Status : Not Answered  
Chosen Option : --

Q.14 Identify the INCORRECT spelling from the given sentence and select its correct spelling.

Voting allows every citezen to have a say in choosing who should run the government.

- Ans
- 1. allouse
  - 2. chosing
  - 3. goverment
  - 4. citizen

Question ID : 26433072039  
Status : Not Answered  
Chosen Option : --

**Q.15 Select the most appropriate synonym of the given word.**

**Contagion**

- Ans
- 1. Grandeur
  - 2. Illusion
  - 3. Transfusion
  - 4. Transmission

Question ID : 26433088759

Status : Not Answered

Chosen Option : --

**Comprehension:**

In the following passage some words have been deleted. Fill in the blanks with the help of the alternatives given. Select the most appropriate option for each number.

A low-pressure area characterised by rapid and frequently damaging air circulation is what (1)\_\_\_\_\_ cyclones. Storms and (2)\_\_\_\_\_ weather are frequently present during cyclones. In the Northern hemisphere, the air moves counter clockwise, (3)\_\_\_\_\_, in the Southern hemisphere, it moves clockwise. Extratropical cyclones, sometimes known as temperate cyclones, and tropical cyclones are the two (4)\_\_\_\_\_ under which cyclones fall. The name 'Cyclone' comes from the Greek word 'Cyclos' which means a snake's coils. Henry Paddington came up with the term because tropical storms in the Arabian Sea and Bay of Bengal (5)\_\_\_\_\_ coiled sea serpents.

**SubQuestion No : 16**

**Q.16 Select the most appropriate answer for blank 1.**

- Ans
- 1. inspires
  - 2. spawns
  - 3. destroys
  - 4. generates

Question ID : 26433092917

Status : Not Answered

Chosen Option : --

**Comprehension:**

In the following passage some words have been deleted. Fill in the blanks with the help of the alternatives given. Select the most appropriate option for each number.

A low-pressure area characterised by rapid and frequently damaging air circulation is what (1)\_\_\_\_\_ cyclones. Storms and (2)\_\_\_\_\_ weather are frequently present during cyclones. In the Northern hemisphere, the air moves counter clockwise, (3)\_\_\_\_\_, in the Southern hemisphere, it moves clockwise. Extratropical cyclones, sometimes known as temperate cyclones, and tropical cyclones are the two (4)\_\_\_\_\_ under which cyclones fall. The name 'Cyclone' comes from the Greek word 'Cyclos' which means a snake's coils. Henry Paddington came up with the term because tropical storms in the Arabian Sea and Bay of Bengal (5)\_\_\_\_\_ coiled sea serpents.

**SubQuestion No : 17**

**Q.17 Select the most appropriate answer for blank 2.**

- Ans
- 1. unfavourable
  - 2. accustomed
  - 3. advantageous
  - 4. unaccepted

Question ID : 26433092918

Status : Not Answered

Chosen Option : --

**Comprehension:**

In the following passage some words have been deleted. Fill in the blanks with the help of the alternatives given. Select the most appropriate option for each number.

A low-pressure area characterised by rapid and frequently damaging air circulation is what (1)\_\_\_\_\_ cyclones. Storms and (2)\_\_\_\_\_ weather are frequently present during cyclones. In the Northern hemisphere, the air moves counter clockwise, (3)\_\_\_\_\_, in the Southern hemisphere, it moves clockwise. Extratropical cyclones, sometimes known as temperate cyclones, and tropical cyclones are the two (4)\_\_\_\_\_ under which cyclones fall. The name 'Cyclone' comes from the Greek word 'Cyclos' which means a snake's coils. Henry Paddington came up with the term because tropical storms in the Arabian Sea and Bay of Bengal (5)\_\_\_\_\_ coiled sea serpents.

**SubQuestion No : 18**

**Q.18** Select the most appropriate answer for blank 3.

- Ans
- 1. whereas
  - 2. because
  - 3. or
  - 4. unless

Question ID : 26433092919  
Status : Not Answered  
Chosen Option : --

**Comprehension:**

In the following passage some words have been deleted. Fill in the blanks with the help of the alternatives given. Select the most appropriate option for each number.

A low-pressure area characterised by rapid and frequently damaging air circulation is what (1)\_\_\_\_\_ cyclones. Storms and (2)\_\_\_\_\_ weather are frequently present during cyclones. In the Northern hemisphere, the air moves counter clockwise, (3)\_\_\_\_\_, in the Southern hemisphere, it moves clockwise. Extratropical cyclones, sometimes known as temperate cyclones, and tropical cyclones are the two (4)\_\_\_\_\_ under which cyclones fall. The name 'Cyclone' comes from the Greek word 'Cyclos' which means a snake's coils. Henry Paddington came up with the term because tropical storms in the Arabian Sea and Bay of Bengal (5)\_\_\_\_\_ coiled sea serpents.

**SubQuestion No : 19**

**Q.19** Select the most appropriate answer for blank 4.

- Ans
- 1. ranks
  - 2. statuses
  - 3. categories
  - 4. species

Question ID : 26433092920  
Status : Not Answered  
Chosen Option : --



**Comprehension:**

In the following passage some words have been deleted. Fill in the blanks with the help of the alternatives given. Select the most appropriate option for each number.

A low-pressure area characterised by rapid and frequently damaging air circulation is what (1)\_\_\_\_\_ cyclones. Storms and (2)\_\_\_\_\_ weather are frequently present during cyclones. In the Northern hemisphere, the air moves counter clockwise, (3)\_\_\_\_\_, in the Southern hemisphere, it moves clockwise. Extratropical cyclones, sometimes known as temperate cyclones, and tropical cyclones are the two (4)\_\_\_\_\_ under which cyclones fall. The name 'Cyclone' comes from the Greek word 'Cyclos' which means a snake's coils. Henry Paddington came up with the term because tropical storms in the Arabian Sea and Bay of Bengal (5)\_\_\_\_\_ coiled sea serpents.

**SubQuestion No : 20**

**Q.20** Select the most appropriate answer for blank 5.

- Ans
- 1. collect
  - 2. negate
  - 3. mimic
  - 4. resemble

Question ID : 26433092921  
Status : Not Answered  
Chosen Option : --

Section : Part-D-Hindi

**Q.1** निम्नलिखित वाक्य में रेखांकित खंड के स्थान पर प्रयुक्त होने वाले सबसे उपयुक्त विकल्प का चयन कीजिए।  
श्याम ने बर्फी खाया।

- Ans
- 1. खाई
  - 2. खा
  - 3. खाए
  - 4. खाली

Question ID : 26433079660  
Status : Answered  
Chosen Option : 1

**Q.2** निम्न विकल्पों में से शुद्ध वाक्य का चयन कीजिए।

- Ans
- 1. मोहन भूख में तड़प रहा था।
  - 2. पढ़ाई की वजह से उसकी आँखें कमजोर हो गयीं।
  - 3. वह चिंता करती – करती मर गए।
  - 4. श्रद्धा के द्वारा उसका मस्तष्क नत था।

Question ID : 26433063072  
Status : Answered  
Chosen Option : 2

Q.3 निम्नलिखित में से 'सम्बन्धवाचक सर्वनाम' सम्बन्धी अशुद्धि वाले वाक्य की पहचान कीजिए।

- Ans
- 1. यह वही फिल्म है, जिसे तुम देखना चाहते हो।
  - 2. मेरी वह किताब खो गयी एक मैने कल पुस्तक मेले से खरीदा था।
  - 3. जो मेहनत करते हैं, वे सफल होते हैं।
  - 4. यह वही आदमी है, जिसका पुत्र परीक्षा में अक्ल आया है।

Question ID : 26433063006  
Status : Answered  
Chosen Option : 2

Q.4 निम्न में से क्या 'चंद्रमा' शब्द का पर्यायवाची है?

- Ans
- 1. घटक
  - 2. अंशुमाली
  - 3. शशि
  - 4. दिनकर

Question ID : 26433067072  
Status : Answered  
Chosen Option : 3

Q.5 'जिसे वचन द्वारा व्यक्त नहीं किया जा सके' वाक्यांश के लिए उचित शब्द क्या होगा?

- Ans
- 1. अनिर्वचनीय
  - 2. अनिवार्य
  - 3. अलौकिक
  - 4. अनुकरणीय

Question ID : 26433067064  
Status : Answered  
Chosen Option : 1

Q.6 'उसके प्राण पखेरू चले गए।' में रेखांकित शब्द के स्थान पर उपयुक्त शब्द क्या होगा?

- Ans
- 1. उड़
  - 2. गुम
  - 3. तैर
  - 4. सो

Question ID : 26433066797  
Status : Answered  
Chosen Option : 1

Q.7 'घोड़े बेचकर \_\_\_\_\_।' उपरोक्त मुहावरे में रिक्त स्थान की पूर्ति उचित शब्द द्वारा कीजिए।

- Ans
- 1. खाना
  - 2. सोना
  - 3. रहना
  - 4. घूमना

Question ID : 26433069684  
Status : Answered  
Chosen Option : 2

Q.8 निम्नलिखित विकल्पों में से किस एक वाक्य में विशेषण का उचित प्रयोग किया गया है?

- Ans
- 1. नीना खाती है।
  - 2. करीम खेलता है।
  - 3. राधा के लम्बे बाल हैं।
  - 4. शीला सोती है।

Question ID : 26433062964  
Status : Answered  
Chosen Option : 3

Q.9 "सीमा की बात सुनकर जया को आश्चर्य हुआ।" उक्त वाक्य में प्रयुक्त 'आश्चर्य' के स्थान पर उसके समानार्थी शब्द का प्रयोग निम्न में से किस वाक्य में नहीं किया गया है?

- Ans
- 1. सीमा की बात सुनकर जया को अचरज हुआ।
  - 2. सीमा की बात सुनकर जया को विस्मय हुआ।
  - 3. सीमा की बात सुनकर जया को मनोरथ लगा।
  - 4. सीमा की बात सुनकर जया को अचंभा हुआ।

Question ID : 26433067033  
Status : Answered  
Chosen Option : 4

Q.10 निम्नलिखित विकल्पों में से 'जो कभी बूढ़ा न हो' वाक्यांश के लिए एक सार्थक शब्द क्या होगा ?

- Ans
- 1. अजर
  - 2. अपार
  - 3. अजन्मा
  - 4. अमर

Question ID : 26433062534  
Status : Answered  
Chosen Option : 1

Q.11 संसार शूर को हमेशा उसकी बहादुरी के लिए याद करता है और \_\_\_\_\_ को उसकी कायरता के लिए।

'शूर' के विलोम शब्द से उपरोक्त वाक्य पूर्ण कीजिए।

- Ans
- 1. सरस
  - 2. भीरु
  - 3. निर्भय
  - 4. दिलेर

Question ID : 26433080873  
Status : Answered  
Chosen Option : 2

Q.12 निम्नलिखित में से कौन सा वर्तनी की दृष्टि से अशुद्ध वाक्य है?

- Ans
- 1. वह उस स्कूल में पढ़ा जो उसके गाँव के निकट था।
  - 2. मैं उसे चुप रहने को कहता रहा पर उसने एक नहीं सुनी।
  - 3. पृथ्वी गोल है और हम इसे प्रमाणित कर सकते हैं।
  - 4. पोत नष्ट हो गया, पर यात्रीयों को बचा लिया गया।

Question ID : 26433062895  
Status : Answered  
Chosen Option : 4

Q.13 निम्न वाक्यांश के लिए सही एक-शब्द का चयन विकल्पों में से कीजिए।  
जो कल्पना से परे हो

- Ans
- 1. कल्पनातीत
  - 2. प्रामाणिक
  - 3. काल्पनिक
  - 4. कालातीत

Question ID : 26433070101  
Status : Answered  
Chosen Option : 1

Q.14 निम्नलिखित वाक्य में रेखांकित शब्द का पर्यायवाची शब्द क्या होगा?  
कमज़ोर अदमी को एक ना एक रोग लगा रहता है।

- Ans
- 1. अभिशाप
  - 2. बहाना
  - 3. व्याधि
  - 4. वरदान

Question ID : 26433085070  
Status : Answered  
Chosen Option : 3

Q.15 'बाँछे खिल जाना' मुहावरे का सही अर्थ है -

- Ans
- 1. दोस्त मिल जाना
  - 2. फूल खिल जाना
  - 3. प्रसन्न हो जाना
  - 4. सुंदर हो जाना

Question ID : 26433065927

Status : Answered

Chosen Option : 3

**Comprehension:**

आगे पढ़ें गए प्रश्न संख्या 1 से 5 तक के उत्तर निम्न गद्यांश के आधार पर दीजिए।  
आचार्य महावीर प्रसाद द्विवेदी ने यह अकारण नहीं कहा था कि 'साहित्य समाज का दर्पण है। निःसंदेह साहित्य और समाज का अटूट संबंध है। साहित्य समाज का प्रतिबिंब भी है और मार्गदर्शक भी। मानव समाज का हित चिंतन और उसका पथप्रदर्शन करना साहित्य का लक्ष्य है। साहित्य, (1) \_\_\_\_\_ की चेतना को विकसित करता है। साहित्य वह है जिसमें समाज अपना चेहरा देखता है। साहित्य ही वह है जो समाज की शोभा, उसकी यशसंपन्नता एवं मान-मर्यादा को प्रतिबिंबित करता है। यदि समाज शरीर है, तो साहित्य उसकी (2) \_\_\_\_\_ है। जिस समाज का साहित्य जितना समृद्ध एवं (3) \_\_\_\_\_ होता है, वह समाज उतना ही श्रेष्ठ माना जाता है। समाज का नवसृजन करने वाला साहित्य एक सशक्त माध्यम तो है ही, यह (4) \_\_\_\_\_ के सम्मुख बहुत ही सहज ढंग से (5) \_\_\_\_\_ की सभ्यता और संस्कृति को भी प्रस्तुत करता है।

SubQuestion No : 16

Q.16 रिक्त स्थान (1) के लिए सर्वाधिक उपयुक्त शब्द इनमें से कौन सा होगा?

- Ans
- 1. कहानी
  - 2. समाज
  - 3. राजनीति
  - 4. कविता

Question ID : 26433092220

Status : Answered

Chosen Option : 2

**Comprehension:**

आगे पढ़ें गए प्रश्न संख्या 1 से 5 तक के उत्तर निम्न गद्यांश के आधार पर दीजिए।  
आचार्य महावीर प्रसाद द्विवेदी ने यह अकारण नहीं कहा था कि 'साहित्य समाज का दर्पण है। निःसंदेह साहित्य और समाज का अटूट संबंध है। साहित्य समाज का प्रतिबिंब भी है और मार्गदर्शक भी। मानव समाज का हित चिंतन और उसका पथप्रदर्शन करना साहित्य का लक्ष्य है। साहित्य, (1) \_\_\_\_\_ की चेतना को विकसित करता है। साहित्य वह है जिसमें समाज अपना चेहरा देखता है। साहित्य ही वह है जो समाज की शोभा, उसकी यशसंपन्नता एवं मान-मर्यादा को प्रतिबिंबित करता है। यदि समाज शरीर है, तो साहित्य उसकी (2) \_\_\_\_\_ है। जिस समाज का साहित्य जितना समृद्ध एवं (3) \_\_\_\_\_ होता है, वह समाज उतना ही श्रेष्ठ माना जाता है। समाज का नवसृजन करने वाला साहित्य एक सशक्त माध्यम तो है ही, यह (4) \_\_\_\_\_ के सम्मुख बहुत ही सहज ढंग से (5) \_\_\_\_\_ की सभ्यता और संस्कृति को भी प्रस्तुत करता है।

SubQuestion No : 17

Q.17 रिक्त स्थान (2) के लिए सर्वाधिक उपयुक्त शब्द इनमें से कौन सा होगा?

- Ans
- 1. भावना
  - 2. आँख
  - 3. आत्मा
  - 4. बुद्धि

Question ID : 26433092221

Status : Answered

Chosen Option : 3

**Comprehension:**

आगे पूछे गए प्रश्न संख्या 1 से 5 तक के उत्तर निम्न गद्यांश के आधार पर दीजिए।  
आचार्य महावीर प्रसाद द्विवेदी ने यह अकारण नहीं कहा था कि 'साहित्य समाज का दर्पण है। निःसंदेह साहित्य और समाज का अटूट संबंध है। साहित्य समाज का प्रतिबिंब भी है और मार्गदर्शक भी। मानव समाज का हित चिंतन और उसका पथप्रदर्शन करना साहित्य का लक्ष्य है। साहित्य, (1) \_\_\_\_\_ की चेतना को विकसित करता है। साहित्य वह है जिसमें समाज अपना चेहरा देखता है। साहित्य ही वह है जो समाज की शोभा, उसकी यशसंपन्नता एवं मान-मर्यादा को प्रतिबिंबित करता है। यदि समाज शरीर है, तो साहित्य उसकी (2) \_\_\_\_\_ है। जिस समाज का साहित्य जितना समृद्ध एवं (3) \_\_\_\_\_ होता है, वह समाज उतना ही श्रेष्ठ माना जाता है। समाज का नवसृजन करने वाला साहित्य एक सशक्त माध्यम तो है ही, यह (4) \_\_\_\_\_ के सम्मुख बहुत ही सहज ढंग से (5) \_\_\_\_\_ की सभ्यता और संस्कृति को भी प्रस्तुत करता है।

**SubQuestion No : 18**

Q.18 रिक्त स्थान (3) के लिए सर्वाधिक उपयुक्त शब्द इनमें से कौन सा होगा?

- Ans
- 1. उन्नति
  - 2. प्रोन्नत
  - 3. उन्नत
  - 4. अवनत

Question ID : 26433092222

Status : Answered

Chosen Option : 3

**Comprehension:**

आगे पूछे गए प्रश्न संख्या 1 से 5 तक के उत्तर निम्न गद्यांश के आधार पर दीजिए।  
आचार्य महावीर प्रसाद द्विवेदी ने यह अकारण नहीं कहा था कि 'साहित्य समाज का दर्पण है। निःसंदेह साहित्य और समाज का अटूट संबंध है। साहित्य समाज का प्रतिबिंब भी है और मार्गदर्शक भी। मानव समाज का हित चिंतन और उसका पथप्रदर्शन करना साहित्य का लक्ष्य है। साहित्य, (1) \_\_\_\_\_ की चेतना को विकसित करता है। साहित्य वह है जिसमें समाज अपना चेहरा देखता है। साहित्य ही वह है जो समाज की शोभा, उसकी यशसंपन्नता एवं मान-मर्यादा को प्रतिबिंबित करता है। यदि समाज शरीर है, तो साहित्य उसकी (2) \_\_\_\_\_ है। जिस समाज का साहित्य जितना समृद्ध एवं (3) \_\_\_\_\_ होता है, वह समाज उतना ही श्रेष्ठ माना जाता है। समाज का नवसृजन करने वाला साहित्य एक सशक्त माध्यम तो है ही, यह (4) \_\_\_\_\_ के सम्मुख बहुत ही सहज ढंग से (5) \_\_\_\_\_ की सभ्यता और संस्कृति को भी प्रस्तुत करता है।

**SubQuestion No : 19**

Q.19 रिक्त स्थान (4) के लिए सर्वाधिक उपयुक्त शब्द इनमें से कौन सा होगा?

- Ans
- 1. जनमंच
  - 2. जनमन
  - 3. जनसामान्य
  - 4. जागरण

Question ID : 26433092223

Status : Answered

Chosen Option : 1

**Comprehension:**

आगे पूछे गए प्रश्न संख्या 1 से 5 तक के उत्तर निम्न गद्यांश के आधार पर दीजिए।  
आचार्य महावीर प्रसाद द्विवेदी ने यह अकारण नहीं कहा था कि 'साहित्य समाज का दर्पण है। निःसंदेह साहित्य और समाज का अटूट संबंध है। साहित्य समाज का प्रतिबिंब भी है और मार्गदर्शक भी। मानव समाज का हित चिंतन और उसका पथप्रदर्शन करना साहित्य का लक्ष्य है। साहित्य, (1) \_\_\_\_\_ की चेतना को विकसित करता है। साहित्य वह है जिसमें समाज अपना चेहरा देखता है। साहित्य ही वह है जो समाज की शोभा, उसकी यशसंपन्नता एवं मान-मर्यादा को प्रतिबिंबित करता है। यदि समाज शरीर है, तो साहित्य उसकी (2) \_\_\_\_\_ है। जिस समाज का साहित्य जितना समृद्ध एवं (3) \_\_\_\_\_ होता है, वह समाज उतना ही श्रेष्ठ माना जाता है। समाज का नवसृजन करने वाला साहित्य एक सशक्त माध्यम तो है ही, यह (4) \_\_\_\_\_ के सम्मुख बहुत ही सहज ढंग से (5) \_\_\_\_\_ की सभ्यता और संस्कृति को भी प्रस्तुत करता है।

**SubQuestion No : 20**

**Q.20** रिक्त स्थान (5) के लिए सर्वाधिक उपयुक्त शब्द इनमें से कौन सा होगा?

- Ans**
- 1. दहशत
  - 2. दासता
  - 3. देशकाल
  - 4. दक्षता

Question ID : 26433092224

Status : Answered

Chosen Option : 4

KD Job Updates

## Constable GD in CAPFs SSF Rifleman GD in Assam Rifles and Sepoy in NCB Examination 2022

Roll Number	<b>KD Job Updates</b>
Candidate Name	<b>KD Job Updates</b>
Venue Name	iON Digital Zone iDZ 1 Moula Ali
Exam Date	16/01/2023
Exam Time	11:45 AM - 12:45 PM
Subject	Constable GD Examination 2022

Section : **Part-A-General Intelligence and Reasoning**

**Q.1** Select the option that is related to the third word in the same way as the second word is related to the first word. (The words must be considered as meaningful English words and must not be related to each other based on the number of letters/number of consonants/vowels in the word.)

Doctor : Stethoscope :: Blacksmith : ?

- Ans
- 1. Axe
  - 2. Iron
  - 3. Pen
  - 4. Anvil

Question ID : 26433086257

Status : Answered

Chosen Option : 4

**Q.2** Select the correct mirror image of the given figure when the mirror is placed at MN as shown below.



- Ans
- 1. 7 8 b F B G 2 T
  - 2. 7 8 p F B G 2 T
  - 3. 7 8 b F B G 2 T
  - 4. 7 8 p F B G 2 T

Question ID : 26433080811

Status : Answered

Chosen Option : 1



**Q.3** Three Statements are given followed by Three conclusions numbered I, II and III. Assuming the statements to be true, even if they seem to be at variance with commonly known facts, decide which of the conclusions logically follow(s) from the statements.

**Statements:**

All pencils are houses.

All houses are cars.

All cars are trucks.

**Conclusions:**

I. Some houses are pencils.

II. Some cars are houses.

III. Some trucks are cars.

**Ans**  1. Both conclusions I and II follow.

2. All conclusions follow.

3. Both conclusions II and III follow.

4. Both conclusions I and III follow.

Question ID : 26433074634

Status : Answered

Chosen Option : 2

**Q.4** Which of the following options will replace the question mark (?) in the given series?  
7, 14, 28, 56, ?, 224, 448

**Ans**  1. 116

2. 124

3. 112

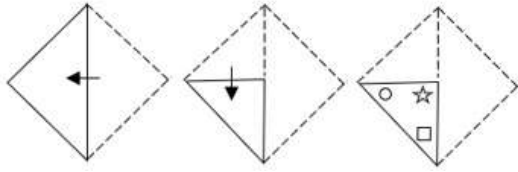
4. 108

Question ID : 26433089443

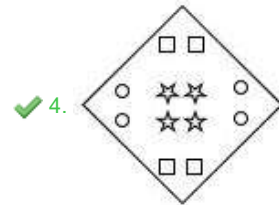
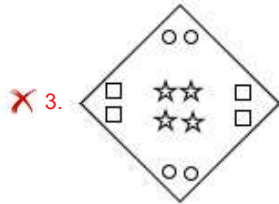
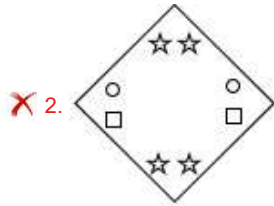

Status : Answered

Chosen Option : 3

Q.5 A paper is folded and cut as shown below. How will it appear when unfolded?



Ans



Question ID : 26433090951

Status : Answered

Chosen Option : 4

Q.6 'A + B' means 'A is the brother of B'.  
 'A - B' means 'A is the mother of B'.  
 'A × B' means 'A is the husband of B'.  
 'A ÷ B' means 'A is the sister of B'.  
 'A @ B' means 'A is the son of B'.  
 If  $C \div D @ E \times F - G$ , how is C related to G?

Ans ✗ 1. Brother

✓ 2. Sister

✗ 3. Mother's sister

✗ 4. Sister's husband

Question ID : 26433087003

Status : Answered

Chosen Option : 2

Q.7 In a certain code language, the word 'FAME' is written as 'IDPH'. The word 'PINK' is written as 'SLQN'. How is the word 'RUDE' written in the same code language?

- Ans
- 1. UVIG
  - 2. UXGH
  - 3. TXGI
  - 4. TWHG

Question ID : 26433090104

Status : Answered

Chosen Option : 2

Q.8 Eight people, D, E, G, H, K, L, S and T are sitting in a straight line, facing north. E sits fourth from the right end of the line. No one sits between G and E. G sits third to the right of H. Only five people sit between K and H. L sits to the immediate right of T. S does not sit at any of the extreme ends of the line. How many people sit between S and D?

- Ans
- 1. None
  - 2. More than two
  - 3. Two
  - 4. One

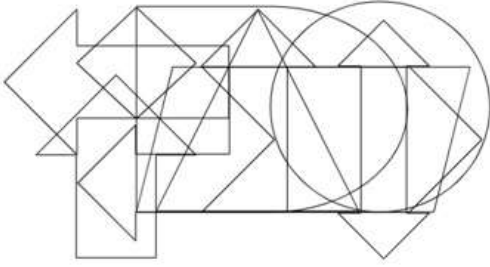
Question ID : 26433092423

Status : Answered

Chosen Option : 4

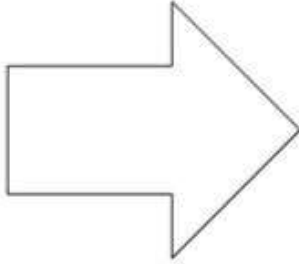
KD Job Updates

Q.9 Select the option figure which is embedded in the given figure. (Rotation is Not allowed)

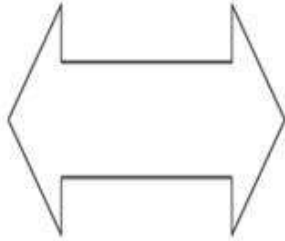


Ans


✗ 1.



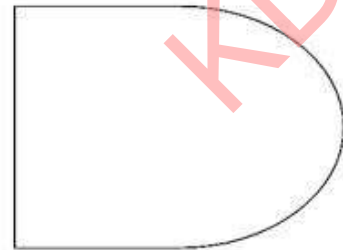
✗ 2.



✗ 3.



✓ 4.



KD Job Updates

Question ID : 26433085743

Status : Answered

Chosen Option : 4

Q.10 Which of the following numbers will replace the question mark (?) in the given series?  
2, 4, 6, 10, 14, ?, 26, 34, 42

- Ans
- 1. 24
  - 2. 20
  - 3. 25
  - 4. 22

Question ID : 26433083119  
Status : Answered  
Chosen Option : 2

Q.11 Which letter cluster will replace the question mark (?) to complete the given series?  
DKBN, EMYP, ?, GQST, HSPV

- Ans
- 1. FOVR
  - 2. GHVR
  - 3. HVRO
  - 4. ROVF

Question ID : 26433079423  
Status : Answered  
Chosen Option : 1

Q.12 Which two signs should be interchanged to make the below equation mathematically correct?  
 $3 \times 144 - 6 \div 40 + 20 = 52$

- Ans
- 1. ÷ and -
  - 2. + and ÷
  - 3. - and +
  - 4. + and ×

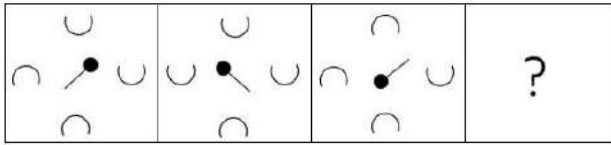
Question ID : 264330117560  
Status : Answered  
Chosen Option : 1

Q.13 In a certain code language, if FLED is coded as 3921 and GIFT is coded as 46317, how will HUNK be coded in that language?

- Ans
- 1. 8211411
  - 2. 19211316
  - 3. 720107
  - 4. 518118

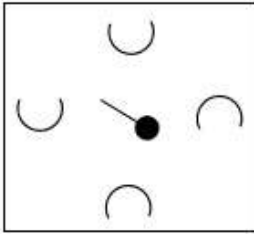
Question ID : 26433068066  
Status : Answered  
Chosen Option : 4

**Q.14** Select the figure from among the given options that can replace the question mark (?) in the following series.

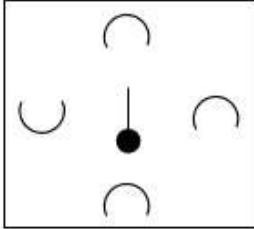


**Ans**

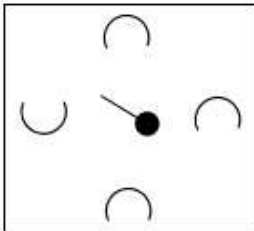
✓ 1.



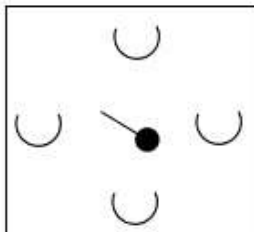
✗ 2.



✗ 3.



✗ 4.



Question ID : 26433080766

Status : Not Answered

Chosen Option : --

**Q.15** Six students are sitting around a circular table facing the centre. A sits to the immediate left of C. E sits third to the right of D. D is an immediate neighbour of C. B is an immediate neighbour of both E and F. How many persons sit between C and B from either side?

Ans ✗ 1. 3

✗ 2. 1

✗ 3. 0

✓ 4. 2

Question ID : 26433079504

Status : Answered

Chosen Option : 4

Q.16 Select the correct combination of mathematical signs to sequentially replace the \* signs and to balance the given equation.

$$14 * 3 * 8 * 8 * 6 * 7$$

- Ans
- 1. +, x, =, -, x
  - 2. +, x, x, -, =
  - 3. x, +, -, =, x
  - 4. -, =, +, x, x

Question ID : 26433094990

Status : Answered

Chosen Option : 3

Q.17 Select the set in which the numbers are related in the same way as are the numbers of the following sets.

(NOTE : Operations should be performed on the whole numbers, without breaking down the numbers into its constituent digits. E.g. 13 – Operations on 13 such as adding /subtracting/multiplying etc. to 13 can be performed. Breaking down 13 into 1 and 3 and then performing mathematical operations on 1 and 3 is not allowed)

(10, 450, 5)  
(8, 360, 5)

- Ans
- 1. (7, 189, 3)
  - 2. (9, 340, 4)
  - 3. (7, 285, 5)
  - 4. (9, 223, 3)

Question ID : 26433076536

Status : Answered

Chosen Option : 1

Q.18 Which option represents the correct order of the given words as they would appear in the English dictionary?

- 1 Mountain
- 2 Mould
- 3 Monster
- 4 Mouth
- 5 Moving

- Ans
- 1. 2, 3, 1, 4, 5
  - 2. 3, 2, 1, 4, 5
  - 3. 1, 2, 3, 4, 5
  - 4. 4, 3, 2, 1, 5

Question ID : 26433081635

Status : Answered

Chosen Option : 2

Q.19 Which of the following terms will replace the question mark (?) in the given series?  
BWGV, CUJR, DSMN, EQPJ, ?

- Ans
- 1. FOSE
  - 2. FSSF
  - 3. FOSF
  - 4. FSSN

Question ID : 26433069450  
Status : Answered  
Chosen Option : 3

Q.20 Select the option that is related to the fifth term in the same way as the second term is related to the first term and the fourth term is related to the third term.  
MEMORY : NFNPSZ :: BRAIN : CSBJO :: DREAM : ?

- Ans
- 1. ESFBN
  - 2. EFFSE
  - 3. NBFSE
  - 4. NBFEF

Question ID : 26433057688  
Status : Answered  
Chosen Option : 1

Section : Part-B-General Knowledge and General awareness

Q.1 Atal Mission for Rejuvenation and Urban Transformation (AMRUT) 2.0 guidelines have been formulated with the aim of assisting states making our cities \_\_\_\_\_.

- Ans
- 1. water secure
  - 2. technologically friendly
  - 3. financially secure
  - 4. debt secure

Question ID : 264330116180  
Status : Not Answered  
Chosen Option : --

Q.2 Which of the following Articles of the Indian Constitution deals with the Right against Exploitation?

- Ans
- 1. Article 33 - 34
  - 2. Article 37 - 38
  - 3. Article 23 - 24
  - 4. Article 27 - 28

Question ID : 26433086805  
Status : Answered  
Chosen Option : 1



**Q.3 Identify the element that is NOT a metalloid.**

- Ans  1. Xenon  
 2. Polonium  
 3. Tellurium  
 4. Germanium

Question ID : 26433086745  
Status : Not Answered  
Chosen Option : --

**Q.4 Which of the following is correct regarding net national product?**

- Ans  1.  $NNP \equiv GNP - \text{Depreciation}$   
 2.  $NNP \equiv GNP \times \text{Depreciation}$   
 3.  $NNP \equiv GNP + \text{Depreciation}$   
 4.  $NNP \equiv GNP + \text{Depreciation}$

Question ID : 264330115347  
Status : Not Answered  
Chosen Option : --

**Q.5 Which organization was founded in 1867 in Bombay?**

- Ans  1. Theosophical society  
 2. Prarthana Samaj  
 3. Young Bengal Movement  
 4. Ramkrishna Mission

Question ID : 264330115724  
Status : Not Answered  
Chosen Option : --

**Q.6 In 2015, the Planning Commission was replaced with the \_\_\_\_\_.**

- Ans  1. NITI Aayog  
 2. NaBFID  
 3. Monetary Policy Committee  
 4. Competition Commission of India

Question ID : 26433066658  
Status : Answered  
Chosen Option : 1

**Q.7 Norman Borlaug, father of Green Revolution in the world, was \_\_\_\_\_ (in terms of nationality).**

- Ans  1. Spanish  
 2. Indian  
 3. American  
 4. Chinese

Question ID : 264330115430  
Status : Answered  
Chosen Option : 3

**Q.8** Which of the following Indian ministers hosted LeadIT summit with Sweden on the sidelines of United Nations Framework Convention on Climate Change (COP27)?

- Ans
- 1. Gajendra Singh Shekhawat
  - 2. Narayan Rane
  - 3. Kiren Rijiju
  - 4. Bhupender Yadav

Question ID : 264330115050  
Status : Not Answered  
Chosen Option : --

**Q.9** As per Railway Yearbook 2019–20, what is the length (in km) of narrow gauge in India?

- Ans
- 1. 12365
  - 2. 20334
  - 3. 9876
  - 4. 1604

Question ID : 264330115594  
Status : Not Answered  
Chosen Option : --

**Q.10** In which of the following countries was the ICC U19 Cricket World Cup 2022 organised?

- Ans
- 1. Bangladesh
  - 2. West Indies
  - 3. New Zealand
  - 4. South Africa

Question ID : 26433086731  
Status : Not Answered  
Chosen Option : --

**Q.11** Which of the following states uses the bamboo drip irrigation system?

- Ans
- 1. Tripura
  - 2. Sikkim
  - 3. Meghalaya
  - 4. Assam

Question ID : 26433087890  
Status : Not Answered  
Chosen Option : --

Q.12 Phooldei, a harvest festival, is primarily celebrated in which of the following states of India?

- Ans
- 1. Meghalaya
  - 2. Uttarakhand
  - 3. Andhra Pradesh
  - 4. Gujarat

Question ID : 26433094892  
Status : Not Answered  
Chosen Option : --

Q.13 The National Commission for Women was set up as statutory body in January \_\_\_\_\_.

- Ans
- 1. 1992
  - 2. 1999
  - 3. 1995
  - 4. 1989

Question ID : 264330116043  
Status : Not Answered  
Chosen Option : --

Q.14 Deficiency of which of the following causes weak bones and tooth decay?

- Ans
- 1. Vitamin A
  - 2. Iodine
  - 3. Calcium
  - 4. Iron

Question ID : 264330115217  
Status : Answered  
Chosen Option : 3

Q.15 Who received the Best Dance director Award from the Assam Government?

- Ans
- 1. Jatin Goswami
  - 2. Krishna Ella
  - 3. Anuradha Pandey
  - 4. Amala Akkineni

Question ID : 264330115834  
Status : Not Answered  
Chosen Option : --

Q.16 Kuskuntla Prabhakar Reddy, became Member of Legislative Assembly from \_\_\_\_\_ constituency in Telangana, in November 2022.

- Ans
- 1. Hyderabad
  - 2. Warangal
  - 3. Munugode
  - 4. Secunderabad

Question ID : 264330114968  
Status : Answered  
Chosen Option : 3

Q.17 In the context of Basketball, which of the following statements is correct?

- Ans
- 1. A player is to be substituted within 20 seconds.
  - 2. Two teams of five players are required to start a game.
  - 3. Each basketball must have weight of minimum 700 grams
  - 4. The basketball game was invented in 1981.

Question ID : 26433089938  
Status : Not Answered  
Chosen Option : --

Q.18 Who among the following can issue ordinance when the state legislature is not in session and he is satisfied that immediate action is required?

- Ans
- 1. Chief Minister
  - 2. President
  - 3. Speaker of the Legislative Assembly
  - 4. Governor

Question ID : 26433086827  
Status : Answered  
Chosen Option : 2

Q.19 \_\_\_\_\_ was the capital of Magadha for several year before is was shifted to Pataliputra.

- Ans
- 1. Rajagriha
  - 2. Taxilla
  - 3. Sarnath
  - 4. Ujjain

Question ID : 26433085230  
Status : Answered  
Chosen Option : 1

Q.20 The world famous dancer Gulabo Sapera is known for which of the following dance forms?

- Ans
- 1. Ghoomar
  - 2. Chakari
  - 3. Kalbelia
  - 4. Bhavai

Question ID : 26433071454  
Status : Not Answered  
Chosen Option : --

Section : Part-C-Elementary Mathematics

Q.1 Evaluate the following.  
 $75 - 50 \div 5 \text{ of } 2 + 36 \div 6 \text{ of } 4 \times 2 (18 - 5 \text{ of } 2)$

- Ans
- 1. 96
  - 2. 98
  - 3. 97
  - 4. 94

Question ID : 26433080146  
Status : Not Attempted and Marked For Review  
Chosen Option : --

Q.2 A and B together can complete a work in 26 days. A alone can complete it in 52 days. If B works at 50 percent efficiency, then in how many days A and B together will complete the work?

- Ans
- 1.  $104/3$  days
  - 2.  $107/3$  days
  - 3.  $67/3$  days
  - 4.  $58/3$  days

Question ID : 264330116864  
Status : Not Attempted and Marked For Review  
Chosen Option : --

Q.3 A thief is noticed by a policeman from a distance of 150 m. The thief starts running and the policeman chases him. The thief and policeman run at the speed of 11km/h and 12km/h, respectively. What is the distance between them after 6 minutes?

- Ans
- 1. 100 m
  - 2. 150 m
  - 3. 50 m
  - 4. 200 m

Question ID : 26433073038  
Status : Not Attempted and Marked For Review  
Chosen Option : --

Q.4 Ravi sold two bikes for ₹ 42,188 each. On one bike he gained 20% while on the other he lost 20%. How much per cent does he gain or lose overall?

- Ans
- 1. 4% gain
  - 2. 10% loss
  - 3. 4% loss
  - 4. 10% gain

Question ID : 26433075545  
Status : Answered  
Chosen Option : 3

Q.5 The average of 15 results is 60. If the average of the first eight results is 58, and that of the last six is 62, then find the ninth result.

- Ans
- 1. 62
  - 2. 60
  - 3. 64
  - 4. 63

Question ID : 26433080152  
Status : Answered  
Chosen Option : 3

Q.6 What is the LCM of 6 and 110?

- Ans
- 1. 440
  - 2. 300
  - 3. 330
  - 4. 660

Question ID : 26433082493  
Status : Answered  
Chosen Option : 3

Q.7 What is the surface area (in  $\text{cm}^2$ ) of a sphere whose diameter is 21 cm?

- Ans
- 1. 2772
  - 2. 1386
  - 3. 3465
  - 4. 5544

Question ID : 26433081074  
Status : Not Answered  
Chosen Option : --

Q.8 What is the discount percentage on 'Buy 5 Get 3 Free'?

- Ans
- 1. 39.25%
  - 2. 36.5%
  - 3. 35.5%
  - 4. 37.5%

Question ID : 26433075729  
Status : Answered  
Chosen Option : 4

Q.9 What is 10 percent of 15 percent of 25 percent of ₹4,800?

- Ans
- 1. ₹24
  - 2. ₹21
  - 3. ₹18
  - 4. ₹16

Question ID : 26433079850  
Status : Answered  
Chosen Option : 3

Q.10 An amount of ₹8,00,000 is needed after 2 years to buy a car. The amount deposited in a bank gives 8% per annum interest. What should be the approximate amount to be deposited in present in the bank to meet the requirement; if the interest is compounded annually?

- Ans
- 1. ₹4,55,567
  - 2. ₹5,66,647
  - 3. ₹6,85,871
  - 4. ₹6,44,457

Question ID : 26433081723  
Status : Not Attempted and Marked For Review  
Chosen Option : --

Q.11 Find the compound interest, compounding annually on ₹22,500 in 2 years, if the rate of interest is 5% for the first year, and 8% for the second year.

- Ans
- 1. ₹3,015
  - 2. ₹3,215
  - 3. ₹3,315
  - 4. ₹3,115

Question ID : 26433080191  
Status : Not Attempted and Marked For Review  
Chosen Option : --

Q.12 A trader marks his goods at 50 percent above the cost price and allows a discount of 30 percent. What is his gain percent?

- Ans
- 1. 10 percent
  - 2. 6 percent
  - 3. 8 percent
  - 4. 5 percent

Question ID : 264330116749  
Status : Answered  
Chosen Option : 4

Q.13 If  $\frac{2a+b}{a+4b} = 1$ , then what is the value of  $\frac{a+b}{a-b}$ ?

- Ans
- 1. 3
  - 2. 2
  - 3. 4
  - 4. 1

Question ID : 26433079870  
Status : Answered  
Chosen Option : 2

Q.14 30% of the men are over the age of 25 years, and 80% are under or equal to 50 years of age. Football is played by 20% of all men. What percentage of football players are under or equal to 50 years of age, if 20% of men over the age of 50 years play football?

- Ans
- 1. 77%
  - 2. 80%
  - 3. 71%
  - 4. 82%

Question ID : 26433076324  
Status : Not Answered  
Chosen Option : --

Q.15 If 18 workers can lay a road in 15 h, then how many more workers are required to lay the same road in 9 h?

- Ans
- 1. 15
  - 2. 18
  - 3. 12
  - 4. 30

Question ID : 26433075915  
Status : Answered  
Chosen Option : 4



Q.16 A batsman in his 13th inning makes a score of 85 runs and there by increases his average by five runs. What is his average after 13th innings?

- Ans  1. 26  
 2. 25  
 3. 23  
 4. 20

Question ID : 26433080153  
Status : Not Answered  
Chosen Option : --

Q.17 In a circular race of 2,700 m, P and Q start from point A in opposite directions at speeds of 23 km/h and 49 km/h, respectively. What is the time taken by them to meet for the first time?

- Ans  1. 135 sec  
 2. 130 sec  
 3. 140 sec  
 4. 145 sec

Question ID : 26433074462  
Status : Not Answered  
Chosen Option : --

Q.18 20 men can earn ₹520 in 6 days. How much money will 18 men earn in 10 days?

- Ans  1. ₹780  
 2. ₹620  
 3. ₹740  
 4. ₹660

Question ID : 26433080134  
Status : Not Answered  
Chosen Option : --

Q.19 .What is the change in the curved surface area of a cylinder when we double the radius and the height is halved?

- Ans  1. Four times  
 2. Tripled  
 3. Doubled  
 4. No change

Question ID : 26433073049  
Status : Not Answered  
Chosen Option : --

Q.20 Rishabh bought some T-shirts at 3 for ₹252, and sold them at 5 for ₹200. Find his gain or loss percentage.

- Ans
- 1. Loss 72.5%
  - 2. Loss 52.4%
  - 3. Gain 83.2%
  - 4. Gain 62.5%

Question ID : 26433080014  
Status : Not Answered  
Chosen Option : --

Section : Part-D-English

Q.1 Select the most appropriate synonym of the underlined word.

There was palpable tension in the negotiation room.

- Ans
- 1. indistinguishable
  - 2. imperceptible
  - 3. insensible
  - 4. detectable

Question ID : 26433088838  
Status : Not Attempted and Marked For Review  
Chosen Option : --

Q.2 Select the most appropriate option to fill in the blank.

He is determined to \_\_\_\_\_ any kind of task to prove his talent.

- Ans
- 1. entrust
  - 2. escape
  - 3. avoid
  - 4. undertake

Question ID : 26433074068  
Status : Answered  
Chosen Option : 4

Q.3 Select the most appropriate option to substitute the underlined segment in the given sentence to make it a meaningful sentence. If no substitution is required, select 'No substitution'.

Patients who do previous heart attacks and those with cardiac failure are at a higher risk of having a cardiac arrest.

- Ans
- 1. who have had previous heart attack and they with cardiac failure are at a higher risk of having
  - 2. who have had previous heart attacks and those of cardiac failure are at a higher risk of having
  - 3. No substitution
  - 4. who have had previous heart attacks and those with cardiac failure are at a higher risk of having

Question ID : 26433092047  
Status : Answered  
Chosen Option : 2

Q.4 Select the most appropriate synonym of the given word.

Dodge

- Ans  1. Cheat  
 2. Determine  
 3. Announce  
 4. Advice

Question ID : 26433088490  
Status : Not Answered  
Chosen Option : --

Q.5 Select the correct option to substitute the underlined segment in the given sentence. If no substitution is required, select 'No substitution'.

The patient had died before the doctor came.

- Ans  1. will be dead  
 2. No substitution  
 3. died  
 4. is dead

Question ID : 26433090807  
Status : Marked For Review  
Chosen Option : 2

Q.6 Select the most appropriate option to fill in the blank.

The patient suffered an epileptic \_\_\_\_\_.

- Ans  1. caesar  
 2. scissors  
 3. sizar  
 4. seizure

Question ID : 26433087941  
Status : Answered  
Chosen Option : 2

Q.7 Select the option with the correct spelling of the underlined word in the given sentence.

In order to find the anamoly, scientists had to repeat the experiment over a hundred times.

- Ans  1. annomaly  
 2. anomally  
 3. anemoly  
 4. anomaly

Question ID : 26433073607  
Status : Answered  
Chosen Option : 2

**Q.8** The following sentence has been divided into parts. One of them may contain an error. Select the part that contains the error from the given options.

**My friend Ragini /shall completed/ her task/ by then.**

- Ans**  1. her task  
 2. shall completed  
 3. by then  
 4. My friend Ragini

Question ID : 26433089825  
Status : Answered  
Chosen Option : 2

**Q.9** Select the most appropriate ANTONYM of the given word.

**Sublime**

- Ans**  1. Singular  
 2. Ordinary  
 3. Apparent  
 4. Equal

Question ID : 26433071984  
Status : Not Answered  
Chosen Option : --

**Q.10** Select the most appropriate meaning of the underlined idiom that can be substituted in the following sentence.

**She knows Spanish after a fashion.**

- Ans**  1. only after the fashion is done  
 2. in a certain fashion  
 3. in a fashionable way  
 4. to only a certain extent

Question ID : 26433072233  
Status : Answered  
Chosen Option : 3

**Q.11** Fill in the blanks with the correct homophone.

I \_\_\_\_\_ some essential items from the supermarket.

- Ans**  1. bout  
 2. boat  
 3. bought  
 4. bot

Question ID : 26433089750  
Status : Answered  
Chosen Option : 3

Q.12 Select the most appropriate option to substitute the underlined segment in the given sentence.

We hope these measure will take us further to a good position.

- Ans
- 1. hopes these measures will take us
  - 2. hope these measures will take us
  - 3. hope those measure will take us
  - 4. hope these measures will taking

Question ID : 26433093018  
Status : Answered  
Chosen Option : 2

Q.13 Select the most appropriate meaning of the given idiom.

A herculean task

- Ans
- 1. A machine work
  - 2. A tough job
  - 3. An important work
  - 4. A simple work

Question ID : 26433072814  
Status : Answered  
Chosen Option : 2

Q.14 Select the INCORRECTLY spelt word.

- Ans
- 1. Periphery
  - 2. Fractural
  - 3. Antagonistic
  - 4. Historiography

Question ID : 26433073656  
Status : Answered  
Chosen Option : 4

Q.15 In the given sentence, a word is given in brackets. Select the most appropriate ANTONYM of the word to fill in the blank.

The boss wanted complete information. He asked about every \_\_\_\_\_ (huge) detail.

- Ans
- 1. mighty
  - 2. minute
  - 3. solid
  - 4. significant

Question ID : 26433058368  
Status : Answered  
Chosen Option : 3

**Comprehension:**

In the following passage, some words have been deleted. Read the passage carefully and select the most appropriate option to fill in each blank.

I looked out (1) \_\_\_\_\_ the city. The sun hung low in the sky, shining weakly (2) \_\_\_\_\_ the clouds, casting long shadows on the grass. I realised that it would be (3) \_\_\_\_\_ soon. The sun would set, finally, the (4) \_\_\_\_\_ would rise in the sky. Another day (5) \_\_\_\_\_ end. Another day lost.

**SubQuestion No : 16**

**Q.16 Select the most appropriate option to fill in blank number 1.**

- Ans
- 1. outside
  - 2. under
  - 3. across
  - 4. inside

Question ID : 26433092835  
Status : Answered  
Chosen Option : 3

**Comprehension:**

In the following passage, some words have been deleted. Read the passage carefully and select the most appropriate option to fill in each blank.

I looked out (1) \_\_\_\_\_ the city. The sun hung low in the sky, shining weakly (2) \_\_\_\_\_ the clouds, casting long shadows on the grass. I realised that it would be (3) \_\_\_\_\_ soon. The sun would set, finally, the (4) \_\_\_\_\_ would rise in the sky. Another day (5) \_\_\_\_\_ end. Another day lost.

**SubQuestion No : 17**

**Q.17 Select the most appropriate option to fill in blank number 2.**

- Ans
- 1. into
  - 2. upon
  - 3. through
  - 4. though

Question ID : 26433092836  
Status : Answered  
Chosen Option : 1

**Comprehension:**

In the following passage, some words have been deleted. Read the passage carefully and select the most appropriate option to fill in each blank.

I looked out (1) \_\_\_\_\_ the city. The sun hung low in the sky, shining weakly (2) \_\_\_\_\_ the clouds, casting long shadows on the grass. I realised that it would be (3) \_\_\_\_\_ soon. The sun would set, finally, the (4) \_\_\_\_\_ would rise in the sky. Another day (5) \_\_\_\_\_ end. Another day lost.

**SubQuestion No : 18**

**Q.18 Select the most appropriate option to fill in blank number 3.**

Ans  1. colourful

2. dark

3. bright

4. light

Question ID : 26433092837

Status : Answered

Chosen Option : 2

**Comprehension:**

In the following passage, some words have been deleted. Read the passage carefully and select the most appropriate option to fill in each blank.

I looked out (1) \_\_\_\_\_ the city. The sun hung low in the sky, shining weakly (2) \_\_\_\_\_ the clouds, casting long shadows on the grass. I realised that it would be (3) \_\_\_\_\_ soon. The sun would set, finally, the (4) \_\_\_\_\_ would rise in the sky. Another day (5) \_\_\_\_\_ end. Another day lost.

**SubQuestion No : 19**

**Q.19 Select the most appropriate option to fill in blank number 4.**

Ans  1. sun

2. stars

3. moon

4. planets

Question ID : 26433092838

Status : Answered

Chosen Option : 3

**Comprehension:**

In the following passage, some words have been deleted. Read the passage carefully and select the most appropriate option to fill in each blank.

I looked out (1) \_\_\_\_\_ the city. The sun hung low in the sky, shining weakly (2) \_\_\_\_\_ the clouds, casting long shadows on the grass. I realised that it would be (3) \_\_\_\_\_ soon. The sun would set, finally, the (4) \_\_\_\_\_ would rise in the sky. Another day (5) \_\_\_\_\_ end. Another day lost.

**SubQuestion No : 20**

**Q.20** Select the most appropriate option to fill in blank number 5.

- Ans
- 1. will
  - 2. cannot
  - 3. would
  - 4. should

Question ID : 26433092839  
Status : Answered  
Chosen Option : 1

## Section : Part-D-Hindi

**Q.1** निम्न मुहावरे को किस विकल्प द्वारा पूर्ण किया जा सकता है?  
'सागर में \_\_\_\_\_'

- Ans
- 1. पानी भरना
  - 2. दूध भरना
  - 3. सागर भरना
  - 4. पैसा भरना

Question ID : 26433066812  
Status : Not Answered  
Chosen Option : --

**Q.2** निम्नलिखित वाक्यांश के लिए एक सार्थक शब्द चुनिए।  
ऐसी बात जो लोग परंपरा से सुनते आये हैं

- Ans
- 1. शैव
  - 2. स्मरणीय
  - 3. किंवदंती
  - 4. अनुसूया

Question ID : 26433062738  
Status : Not Answered  
Chosen Option : --



Q.3 निम्नलिखित वाक्य में से अशुद्धि पहचानें-  
तलवार एक अच्छा अस्त है।

- Ans  1. अस्त  
 2. अच्छा  
 3. एक  
 4. तलवार

Question ID : 26433066828  
Status : Not Answered  
Chosen Option : --

Q.4 निम्नलिखित में से किस वाक्य में 'निर्माण' के विलोम शब्द का प्रयोग हुआ है?

- Ans  1. प्रकाश हमेशा तिमिर का नाश करता है।  
 2. उत्तर भारत का मैदान एक समतल भूमि है।  
 3. हमारे सामने वाला मकान जर्जर अवस्था में है।  
 4. तरुण भारत संघ भारत का गैर सरकारी संगठन है।

Question ID : 26433091174  
Status : Not Answered  
Chosen Option : --

Q.5 निम्न वाक्य में रेखांकित शब्द को विकल्पों में दिए गए किस शब्द से बदला जा सकता है, जिससे वाक्य के अर्थ में कोई परिवर्तन न हो?  
प्रतिदिन रियाज़ करने के कारण वह प्रवीण हो गया।

- Ans  1. कसरत  
 2. उपासना  
 3. अभ्यास  
 4. आसन

Question ID : 26433084961  
Status : Not Answered  
Chosen Option : --

Q.6 निम्नलिखित शब्द का सही पर्यायवाची शब्द विकल्पों में से चुनिए।  
नदी

- Ans  1. हिमनद  
 2. चपला  
 3. तरंगिणी  
 4. सरोज

Question ID : 26433066939  
Status : Not Answered  
Chosen Option : --

Q.7 निम्न में से किस वाक्य में 'खिन्न' के सही पर्यायवाची शब्द का प्रयोग हुआ है?

- Ans  1. जया का मन उदास हो गया।  
 2. रंजन उसके प्रति अनासक्त था।  
 3. सुनैना ने मुक्त कंठ से उसकी प्रशंसा की।  
 4. राजीव आज बेहद प्रसन्न था।

Question ID : 26433067014  
Status : Not Answered  
Chosen Option : --

Q.8 नीचे दिए गए वाक्य में रेखांकित अंश के स्थान पर सबसे उपयुक्त विकल्प कौन-सा होगा?  
वह धीमी स्वर में बोला।

- Ans  1. गुस्से  
 2. करुण  
 3. धीमों  
 4. धीमे

Question ID : 26433066719  
Status : Not Answered  
Chosen Option : --

Q.9 'यह रास्ता \_\_\_\_\_ है, सावधानी से चलें।'  
उपरोक्त वाक्य में रिक्त स्थान की पूर्ति शुद्ध वर्तनी वाले सही शब्द द्वारा कीजिए।

- Ans  1. दुग्रम  
 2. दुगर्म  
 3. दुर्गम  
 4. दुरगम

Question ID : 26433080904  
Status : Not Answered  
Chosen Option : --

Q.10 'जिसके दो पद (पैर) हैं' वाक्यांश के लिए सार्थक शब्द क्या होगा?

- Ans  1. द्विपद  
 2. द्वापर  
 3. द्विज  
 4. चतुष्पद

Question ID : 26433065859  
Status : Not Answered  
Chosen Option : --

Q.11 निम्नलिखित में से किस एक वाक्य में सर्वनाम के प्रयोग सम्बन्धी अशुद्धि है?

- Ans
- 1. सभी छात्र अपने-अपने घर जाएं।
  - 2. सबकी अपनी-अपनी मजबूरियां थीं।
  - 3. जो लोग अन्दर आना चाहते हैं, वह आ सकते हैं।
  - 4. मैं आपके केबिन में बैठा था।

Question ID : 26433062974

Status : Not Answered

Chosen Option : --

Q.12 'पूरब और उत्तर के बीच की दिशा' वाक्यांश के लिए उचित शब्द बताइए -

- Ans
- 1. वायव्य
  - 2. पूर्व
  - 3. पश्चिम
  - 4. ईशान

Question ID : 26433065915

Status : Not Answered

Chosen Option : --

Q.13 निम्नलिखित विकल्पों में से कौन सा एक वाक्य संकेतवाचक सर्वनाम का नहीं है?

- Ans
- 1. वह भिखारी हमेशा मन्दिर के सामने बैठता है।
  - 2. राम का घर कौन सा है?
  - 3. वे पुरानी फाइलें हैं।
  - 4. यह लड़का हमारे विद्यालय का चपरासी नीरज है।

Question ID : 26433062978

Status : Not Answered

Chosen Option : --

Q.14 "राहुल के स्वभाव में क्रोध का भाव अधिक है।"

उक्त वाक्य में प्रयुक्त 'क्रोध' के स्थान पर उसके विलोम शब्द का प्रयोग निम्न में से किस वाक्य में किया गया है?

- Ans
- 1. राहुल के स्वभाव में घृणा का भाव अधिक है।
  - 2. राहुल के स्वभाव में क्षमा का भाव अधिक है।
  - 3. राहुल के स्वभाव में ईर्ष्या का भाव अधिक है।
  - 4. राहुल के स्वभाव में दया का भाव अधिक है।

Question ID : 26433067020

Status : Not Answered

Chosen Option : --

Q.15 नीचे दिए मुहावरे का सही अर्थ दिए गए विकल्पों में से चुनिए-  
लँगोटी में फाग खेलना

- Ans  1. दरिद्रता में आनंद लूटना  
 2. लँगोट पहनना  
 3. बचपन से होली के गीत गाना  
 4. होली खेलना

Question ID : 26433062314

Status : Not Answered

Chosen Option : --

**Comprehension:**

दिए गए गद्यांश में से कुछ शब्दों को हटा दिया गया है। गद्यांश के आधार पर पूछे गए प्रश्नों में उन रिक्त स्थानों के लिए सर्वाधिक उपयुक्त शब्दों का चयन विकल्पों में से कीजिए।

भारतवर्ष ने कभी भी भौतिक वस्तुओं के (1). \_\_\_\_\_ को बहुत अधिक महत्त्व नहीं दिया है। उसकी दृष्टि से मनुष्य के भीतर जो महान (2). \_\_\_\_\_ गुण स्थिर भाव से बैठा हुआ है, वहीं चरम और परम है। लोभ-मोह, काम-क्रोध आदि विचार मनुष्य में (3). \_\_\_\_\_ रूप से विद्यमान रहते हैं, पर उन्हें प्रधान शक्ति मान लेना और अपने मन तथा बुद्धि को उन्हीं के इशारे पर छोड़ देना बहुत बुरा (4). \_\_\_\_\_ है। भारतवर्ष ने कभी भी उन्हें उचित नहीं माना, उन्हें सदा (5). \_\_\_\_\_ के बंधन से बांधकर रखने का प्रयत्न किया है।

SubQuestion No : 16

Q.16 दिए गए शब्दों में से उचित शब्द चुनकर रिक्त स्थान (1) की पूर्ति कीजिए।

- Ans  1. प्रयोग  
 2. विग्रह  
 3. संग्रह  
 4. लाभ

Question ID : 26433090343

Status : Not Answered

Chosen Option : --

**Comprehension:**

दिए गए गद्यांश में से कुछ शब्दों को हटा दिया गया है। गद्यांश के आधार पर पूछे गए प्रश्नों में उन रिक्त स्थानों के लिए सर्वाधिक उपयुक्त शब्दों का चयन विकल्पों में से कीजिए।

भारतवर्ष ने कभी भी भौतिक वस्तुओं के (1). \_\_\_\_\_ को बहुत अधिक महत्त्व नहीं दिया है। उसकी दृष्टि से मनुष्य के भीतर जो महान (2). \_\_\_\_\_ गुण स्थिर भाव से बैठा हुआ है, वहीं चरम और परम है। लोभ-मोह, काम-क्रोध आदि विचार मनुष्य में (3). \_\_\_\_\_ रूप से विद्यमान रहते हैं, पर उन्हें प्रधान शक्ति मान लेना और अपने मन तथा बुद्धि को उन्हीं के इशारे पर छोड़ देना बहुत बुरा (4). \_\_\_\_\_ है। भारतवर्ष ने कभी भी उन्हें उचित नहीं माना, उन्हें सदा (5). \_\_\_\_\_ के बंधन से बांधकर रखने का प्रयत्न किया है।

SubQuestion No : 17

Q.17 दिए गए शब्दों में से उचित शब्द चुनकर रिक्त स्थान (2) की पूर्ति कीजिए।

- Ans  1. विशेष  
 2. आंतरिक  
 3. महत्त्वपूर्ण  
 4. बाह्य

Question ID : 26433090344

Status : Not Answered

Chosen Option : --

**Comprehension:**

दिए गए गद्यांश में से कुछ शब्दों को हटा दिया गया है। गद्यांश के आधार पर पूछे गए प्रश्नों में उन रिक्त स्थानों के लिए सर्वाधिक उपयुक्त शब्दों का चयन विकल्पों में से कीजिए।

भारतवर्ष ने कभी भी भौतिक वस्तुओं के (1). \_\_\_\_\_ को बहुत अधिक महत्त्व नहीं दिया है। उसकी दृष्टि से मनुष्य के भीतर जो महान (2). \_\_\_\_\_ गुण स्थिर भाव से बैठा हुआ है, वही चरम और परम है। लोभ-मोह, काम-क्रोध आदि विचार मनुष्य में (3). \_\_\_\_\_ रूप से विद्यमान रहते हैं, पर उन्हें प्रधान शक्ति मान लेना और अपने मन तथा बुद्धि को उन्हीं के इशारे पर छोड़ देना बहुत बुरा (4). \_\_\_\_\_ है। भारतवर्ष ने कभी भी उन्हें उचित नहीं माना, उन्हें सदा (5). \_\_\_\_\_ के बंधन से बाँधकर रखने का प्रयत्न किया है।

**SubQuestion No : 18**

Q.18 दिए गए शब्दों में से उचित शब्द चुनकर रिक्त स्थान (3) की पूर्ति कीजिए।

- Ans
- 1. स्वाभाविक
  - 2. ऐच्छिक
  - 3. विशेष
  - 4. अनिवार्य

Question ID : 26433090345

Status : Not Answered

Chosen Option : --

**Comprehension:**

दिए गए गद्यांश में से कुछ शब्दों को हटा दिया गया है। गद्यांश के आधार पर पूछे गए प्रश्नों में उन रिक्त स्थानों के लिए सर्वाधिक उपयुक्त शब्दों का चयन विकल्पों में से कीजिए।

भारतवर्ष ने कभी भी भौतिक वस्तुओं के (1). \_\_\_\_\_ को बहुत अधिक महत्त्व नहीं दिया है। उसकी दृष्टि से मनुष्य के भीतर जो महान (2). \_\_\_\_\_ गुण स्थिर भाव से बैठा हुआ है, वही चरम और परम है। लोभ-मोह, काम-क्रोध आदि विचार मनुष्य में (3). \_\_\_\_\_ रूप से विद्यमान रहते हैं, पर उन्हें प्रधान शक्ति मान लेना और अपने मन तथा बुद्धि को उन्हीं के इशारे पर छोड़ देना बहुत बुरा (4). \_\_\_\_\_ है। भारतवर्ष ने कभी भी उन्हें उचित नहीं माना, उन्हें सदा (5). \_\_\_\_\_ के बंधन से बाँधकर रखने का प्रयत्न किया है।

**SubQuestion No : 19**

Q.19 दिए गए शब्दों में से उचित शब्द चुनकर रिक्त स्थान (4) की पूर्ति कीजिए।

- Ans
- 1. कार्य
  - 2. तरीका
  - 3. प्रणाली
  - 4. आचरण

Question ID : 26433090346

Status : Not Answered

Chosen Option : --

**Comprehension:**

दिए गए गद्यांश में से कुछ शब्दों को हटा दिया गया है। गद्यांश के आधार पर पूछे गए प्रश्नों में उन रिक्त स्थानों के लिए सर्वाधिक उपयुक्त शब्दों का चयन विकल्पों में से कीजिए।

भारतवर्ष ने कभी भी भौतिक वस्तुओं के (1). \_\_\_\_\_ को बहुत अधिक महत्त्व नहीं दिया है। उसकी दृष्टि से मनुष्य के भीतर जो महान (2). \_\_\_\_\_ गुण स्थिर भाव से बैठा हुआ है, वही चरम और परम है। लोभ-मोह, काम-क्रोध आदि विचार मनुष्य में (3). \_\_\_\_\_ रूप से विद्यमान रहते हैं, पर उन्हें प्रधान शक्ति मान लेना और अपने मन तथा बुद्धि को उन्हीं के इशारे पर छोड़ देना बहुत बुरा (4). \_\_\_\_\_ है। भारतवर्ष ने कभी भी उन्हें उचित नहीं माना, उन्हें सदा (5). \_\_\_\_\_ के बंधन से बाँधकर रखने का प्रयत्न किया है।

**SubQuestion No : 20**

Q.20 दिए गए शब्दों में से उचित शब्द चुनकर रिक्त स्थान (5) की पूर्ति कीजिए।

Ans  1. संयम

2. बेड़ियों

3. मोह

4. रिश्तों

Question ID : 26433090347

Status : Not Answered

Chosen Option : --

KD Job Updates

## Constable GD in CAPFs SSF Rifleman GD in Assam Rifles and Sepoy in NCB Examination 2022

Roll Number	KD Job Updates
Candidate Name	KD Job Updates
Venue Name	iON Digital Zone iDZ Kozhikode
Exam Date	16/01/2023
Exam Time	2:30 PM - 3:30 PM
Subject	Constable GD Examination 2022

Section : **Part-A-General Intelligence and Reasoning**

**Q.1** Eight people, D, E, M, P, T, W, Y and Z are sitting in a straight line, facing north. M sits at one of the extreme ends of the line. Only two people sit between M and E. D sits third to the right of E. Only four people sit between D and T. Z sits to the immediate right of P. W does not sit at any of the extreme ends of the line. How many people sit to the right of Y?

- Ans  1. One  
 2. None  
 3. Three  
 4. More than three

Question ID : 26433092420

Status : **Not Answered**

Chosen Option : --

Q.2

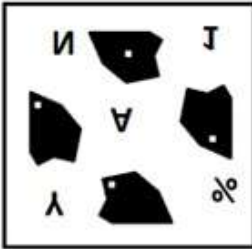
Which of the following figures is the exact mirror image of the given problem figure when the mirror is held at the right side?

Problem figure:

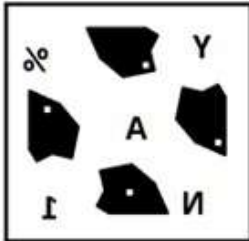


Ans

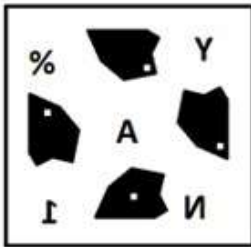
✗ 1.



✓ 2.



✗ 3.



✗ 4.



Question ID : 26433087091

Status : Answered

Chosen Option : 2

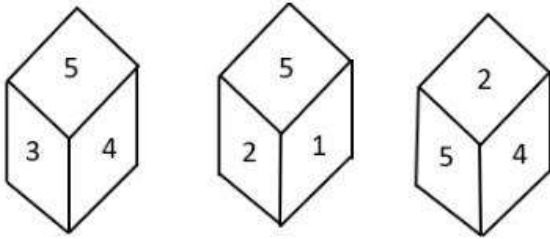


Q.3 Which letter-cluster will replace the question mark (?) to complete the given series?  
AFIN, EJMR, ?, MRUZ, QVYD

- Ans  1. JNRV  
 2. INQV  
 3. JNQV  
 4. INRV

Question ID : 26433067944  
Status : Answered  
Chosen Option : 2

Q.4 Three different positions of the same dice are shown. Find the number on the face opposite the face showing '5'.



- Ans  1. 6  
 2. 2  
 3. 4  
 4. 3

Question ID : 26433090073  
Status : Answered  
Chosen Option : 1

Q.5 Which of the following options will replace the question mark (?) in the given series?  
3, 8, 18, 38, ?, 158, 318

- Ans  1. 98  
 2. 78  
 3. 128  
 4. 108

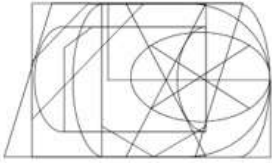
Question ID : 26433089439  
Status : Answered  
Chosen Option : 2

Q.6 In a certain code language, 'DAINTY' is written as 'GCKQWB' and 'PROMISE' is written as 'SUQPKVG'. How will 'CERTAIN' be written in that language?

- Ans  1. GGTUYKP  
 2. EHTVDLP  
 3. EHUVCLO  
 4. FGUWCKQ

Question ID : 26433081763  
Status : Answered  
Chosen Option : 4

Q.7 Select the option figure which is embedded in the given figure. (Rotation is NOT allowed)




Ans

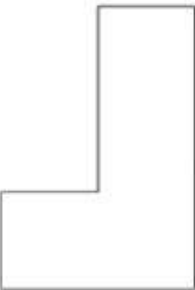
✓ 1.



✗ 2.



✗ 3.



✗ 4.



KD Job Updates

Question ID : 26433085740

Status : Answered

Chosen Option : 1

Q.8 Which option represents the correct order of the given words as they would appear in the English dictionary?

- 1 jumping
- 2 juice
- 3 jumble
- 4 jupiter
- 5 junior

- Ans
- 1. 2,3,4,1,5
  - 2. 2,3,1,5,4
  - 3. 3,4,2,1,5
  - 4. 3,2,1,5,4

Question ID : 26433069303

Status : Answered

Chosen Option : 2

Q.9 Select the option that is related to the fifth number in the same way as the second number is related to the first number and the fourth number is related to the third number.

9 : 11 :: 29 : 21 :: 37 : ?

- Ans
- 1. 26
  - 2. 24
  - 3. 25
  - 4. 22

Question ID : 26433069430

Status : Not Attempted and Marked For Review

Chosen Option : --

Q.10 Select the letter-cluster from among the given options that can replace the question mark (?) in the following series.

OL, VE, CX, JQ, ?

- Ans
- 1. PK
  - 2. PJ
  - 3. QJ
  - 4. QK

Question ID : 26433079038

Status : Answered

Chosen Option : 3

Q.11 Which two signs and two numbers (not digits) should be interchanged in the following equation to make it correct?

$19 \div 14 + 7 \times 2 \times 4 = 80$

- Ans
- 1. 14 and 2; + and  $\times$
  - 2. 7 and 2; + and  $\times$
  - 3. 4 and 19; + and +
  - 4. 19 and 14; + and +

Question ID : 26433082884

Status : Not Attempted and Marked For Review

Chosen Option : --

Q.12 Seven people K, L, M, N, O, P and Q, are sitting in a straight row, facing the north. Only four people sit to the left of P. Q sits third to the left of N. N is not an immediate neighbour of P. M sits third to the left of L. K sits to the immediate left of M. Who sits at the extreme left end of the row?

- Ans
- 1. Q
  - 2. M
  - 3. O
  - 4. K

Question ID : 26433076527  
Status : Answered  
Chosen Option : 1

Q.13 'A + B' means 'A is the brother of B'.  
'A / B' means 'A is the mother of B'.  
'A ^ B' means 'A is the husband of B'.  
'A % B' means 'A is the sister of B'.  
'A @ B' means 'A is the son of B'.  
If  $U \wedge V / W + X \% Y$ , how is U related to Y?

- Ans
- 1. Father's brother
  - 2. Father
  - 3. Son
  - 4. Brother

Question ID : 26433087000  
Status : Answered  
Chosen Option : 2

Q.14 Select the number from among the given options that can replace the question mark (?) in the following series.  
113, 114, 110, 119, 103, 128, ?

- Ans
- 1. 98
  - 2. 89
  - 3. 92
  - 4. 97

Question ID : 26433078917  
Status : Answered  
Chosen Option : 1

Q.15 Which two signs should be interchanged to make the below equation mathematically correct?  
 $36 + 27 - 75 \times 5 \div 25 = 24$

- Ans
- 1. + and -
  - 2. - and +
  - 3. + and  $\times$
  - 4. + and  $\div$

Question ID : 264330117557  
Status : Answered  
Chosen Option : 4

Q.16 In a certain code language, 'FLEET' is written as 'TFMFF', 'OUTLET' is written as 'TOVUMF', how will 'LABOUR' be written as in that language?

- Ans
- 1. RLBCPV
  - 2. RLABOU
  - 3. LRBCPV
  - 4. LRLABOU

Question ID : 26433069648

Status : Not Attempted and  
Marked For Review

Chosen Option : --

Q.17 Select the option that is related to the fifth letter-cluster in the same way as the second letter-cluster is related to the first letter-cluster and the fourth letter-cluster is related to the third letter-cluster.

ZINCKY : XGLAIW :: ZIGZAG : XGEXYE :: JOCKEY : ?

- Ans
- 1. XJASIH
  - 2. HSIAJX
  - 3. HMAICW
  - 4. HISAJX


Question ID : 26433083108

Status : Answered

Chosen Option : 3

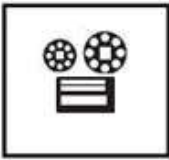
KD Job Updates

Q.18 Select the figure that will come next in the following series.



Ans

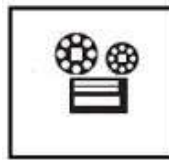
✗ 1.




✗ 2.



✓ 3.



✗ 4.



Question ID : 26433078972  
Status : Answered  
Chosen Option : 3

Q.19 Select the option that is related to the third word in the same way as the second word is related to the first word. (The words must be considered as meaningful English words and must not be related to each other based on the number of letters/number of consonants/vowels in the word.)  
Author : Pen :: Carpenter : ?

Ans

✗ 1. Wood

✗ 2. Wrench

✓ 3. Saw

✗ 4. Furniture

Question ID : 26433067856  
Status : Answered  
Chosen Option : 2

**Q.20** Three statements are given, followed by three conclusions numbered I, II and III. Assuming the statements to be true, even if they seem to be at variance with commonly known facts, decide which of the conclusions logically follow(s) from the statements.

**Statements:**

All birds are cows.  
Some cows are hens.  
Some dogs are birds.

**Conclusions:**

I. Some dogs are hens.  
II. No hens are birds.  
III. Some cows are dogs.

- Ans**
- 1. Only conclusions II and III follow
  - 2. Only conclusions I and II follow
  - 3. All conclusions follow
  - 4. Only conclusion III follows

Question ID : 26433090990

Status : Answered

Chosen Option : 4

Section : Part-B-General Knowledge and General awareness

**Q.1** Who among the following personalities received the Padma Shri award in the year 2008 for his contributions in Odissi dance?

- Ans**
- 1. Shambhu Maharaj
  - 2. Kalkaprasad
  - 3. Ramlal Bareth
  - 4. Gangadhar Pradhan

Question ID : 26433070808

Status : Answered

Chosen Option : 1

**Q.2** Use of bauxite as a raw material is mainly for which industry?

- Ans**
- 1. Aluminium industry
  - 2. Jute industry
  - 3. Steel industry
  - 4. Cement industry

Question ID : 264330115398

Status : Answered

Chosen Option : 1

**Q.3** Which state/Union Territory hosted the Lusofonia Games in the year 2014?

- Ans**
- 1. Goa
  - 2. Delhi
  - 3. Madhya Pradesh
  - 4. Pondicherry

Question ID : 264330115938

Status : Not Answered

Chosen Option : --

**Q.4 Prime Minister Narendra Modi inaugurated Arunachal Pradesh's first greenfield airport in which city?**

- Ans
- 1. Dirang
  - 2. Hollongi
  - 3. Khonsa
  - 4. Anini

Question ID : 264330115047  
Status : Not Answered  
Chosen Option : --

**Q.5 The Hampi Utsav is celebrated every year in which of the following states?**

- Ans
- 1. Karnataka
  - 2. Kerala
  - 3. Tamil Nadu
  - 4. Andhra Pradesh

Question ID : 264330115110  
Status : Answered  
Chosen Option : 1

**Q.6 Workers who own and operate an enterprise to earn their livelihood are known as \_\_\_\_\_.**

- Ans
- 1. regular salried workers
  - 2. skill workers
  - 3. self-employed
  - 4. casual labourers

Question ID : 264330116085  
Status : Answered  
Chosen Option : 2

**Q.7 Which of the following is the chemical formula of washing soda?**

- Ans
- 1.  $\text{Na}_2\text{CO}_3 \cdot 10\text{H}_2\text{O}$
  - 2.  $\text{Na}_2\text{CO}_2$
  - 3.  $\text{Na}_2\text{CO}_3 \cdot \text{H}_2\text{O}$
  - 4.  $\text{NaCO}_2 \cdot \text{H}_2\text{O}$

Question ID : 264330115199  
Status : Answered  
Chosen Option : 2



Q.8 Consider a market structure where the number of firms is large, there is free entry and exit of firms, but the goods produced by them are not homogeneous. Such a market structure is called \_\_\_\_\_.

- Ans
- 1. monopsony
  - 2. oligopoly
  - 3. monopoly
  - 4. monopolistic competition

Question ID : 264330115344  
Status : Answered  
Chosen Option : 2

Q.9 Which of the following is known as Fool's Gold?

- Ans
- 1.  $\text{Fe}_2\text{S}_3$
  - 2.  $\text{FeS}_2$
  - 3.  $\text{FeS}$
  - 4.  $\text{FeS}_3$

Question ID : 26433066469  
Status : Not Answered  
Chosen Option : --

Q.10 The Consumer Protection Act, 2019 was passed in 2019 and came into force in \_\_\_\_\_.

- Ans
- 1. 2019
  - 2. 2021
  - 3. 2020
  - 4. 2022

Question ID : 264330116233  
Status : Answered  
Chosen Option : 3

Q.11 Aga Khan Gold Cup is associated with which of the following Sports?

- Ans
- 1. Golf
  - 2. Hockey
  - 3. Basketball
  - 4. Tennis

Question ID : 264330116304  
Status : Not Answered  
Chosen Option : --

Q.12 Emperor Ashoka was the son of \_\_\_\_\_.

- Ans  1. Bimbisara  
 2. Bindusara  
 3. Chandragupta Maurya  
 4. Ajatashatru

Question ID : 264330106589  
Status : Answered  
Chosen Option : 1

Q.13 The upper house of a state legislature is known as \_\_\_\_\_.

- Ans  1. Lok Sabha  
 2. Vidhan Parishad  
 3. Vidhan Sabha  
 4. Rajya Sabha

Question ID : 26433086674  
Status : Answered  
Chosen Option : 1

Q.14 What was the actual growth rate of the seventh five year plan of India?

- Ans  1. 8 %  
 2. 3 %  
 3. 12 %  
 4. 6 %

Question ID : 26433054630  
Status : Not Answered  
Chosen Option : --

Q.15 As of November 2022, who is the Union Minister for Health in India?

- Ans  1. Hardeep Singh Puri  
 2. Mansukh Mandaviya  
 3. Parshottam Rupala  
 4. Narayan Rane

Question ID : 264330114934  
Status : Not Answered  
Chosen Option : --

Q.16 In \_\_\_\_\_, James Mill, a Scottish economist and political philosopher, published a massive three-volume work, A History of British India.

- Ans  1. 1819  
 2. 1831  
 3. 1821  
 4. 1817

Question ID : 264330115708  
Status : Not Answered  
Chosen Option : --

Q.17 Sharodi Saikia is an Indian classical dancer known for \_\_\_\_\_ dance form.

- Ans  1. Fusion  
 2. Kuchipudi  
 3. Manipuri  
 4. Sattriya

Question ID : 264330115887  
Status : Not Answered  
Chosen Option : --

Q.18 Rule of Law is the foundation of any \_\_\_\_\_, which means that no person is above the law.

- Ans  1. communism  
 2. autocracy  
 3. democracy  
 4. dictatorship

Question ID : 26433086801  
Status : Answered  
Chosen Option : 3

Q.19 Visakhapatnam is the \_\_\_\_\_ landlocked and well-protected port.

- Ans  1. deepest  
 2. shallowest  
 3. longest  
 4. shortest

Question ID : 264330115591  
Status : Not Answered  
Chosen Option : --

Q.20 Dead Sea is bordered by which two countries?

- Ans  1. Israel and Tunisia  
 2. Jordan and Turkey  
 3. Israel and Jordan  
 4. Syria and Jordan

Question ID : 264330116015  
Status : Not Answered  
Chosen Option : --

Q.1 The value of an Apple laptop depreciated from Rs.1,33,100 to Rs.72,900 in 3 years. Find the yearly rate of depreciation. (Correct to 2 decimal places.)

- Ans
- 1. 25.32%
  - 2. 21.34%
  - 3. 20.75%
  - 4. 18.18%

Question ID : 26433081476  
Status : Answered  
Chosen Option : 4

Q.2 In a mixture of 624 litres, the ratio of milk and water is 5:3. The amount of water to be further added to the mixture so as to make the ratio of the milk to water 5:4 will be:

- Ans
- 1. 84 litres
  - 2. 78 litres
  - 3. 64 litres
  - 4. 54 litres

Question ID : 26433075720  
Status : Answered  
Chosen Option : 2

Q.3 A man sold two pens at Rs.12 each. On one, he gained 20% and on the other, he lost 20%. On the whole, he:

- Ans
- 1. lost Rs.1
  - 2. neither gained nor lost
  - 3. gained Rs.1
  - 4. gained Rs.2

Question ID : 26433075147  
Status : Answered  
Chosen Option : 2

Q.4 Two trains of same length are running on parallel tracks in opposite directions with speeds of 54 km/h and 90 km/h respectively. They cross each other in 12 sec. Find the length (in metres) of each train.

- Ans
- 1. 210
  - 2. 220
  - 3. 240
  - 4. 230

Question ID : 26433076307  
Status : Not Answered  
Chosen Option : --

Q.5 The Time taken by Anjali to finish a piece of work is four times the time taken by Ron and Three times the time taken by John. If all three of them work together, it takes them 4 days to complete the entire work. How much time Ron alone take to finish the work?

- Ans
- 1. 11 days
  - 2. 7 days
  - 3. 6 days
  - 4. 8 days

Question ID : 264330116917  
Status : Answered  
Chosen Option : 4

Q.6 Calculate the cost to paint a water tank in the shape of a sphere having a radius of 7 cm, if the cost of painting is Rs.4.5/cm<sup>2</sup>. ( $\pi = 22/7$ )

- Ans
- 1. Rs. 2,272
  - 2. Rs. 2,277
  - 3. Rs. 2,727
  - 4. Rs. 2,772

Question ID : 26433076247  
Status : Not Answered  
Chosen Option : --

Q.7 Mohan and Sohan invested Rs.3,000 and Rs.4,000 respectively in a property and after 6 month Sohan withdraws. If in the end of the year their profit is Rs.540, then what is the profit earned by Mohan?

- Ans
- 1. Rs.288
  - 2. Rs.324
  - 3. Rs.344
  - 4. Rs.296

Question ID : 26433075673  
Status : Not Answered  
Chosen Option : --

Q.8 Seats for Engineering, Management and Science in a University are in the ratio of 7 : 8 : 9. There is a proposal to increase these seats by 20%, 30% and 60% respectively. What will be the ratio of the increased seats?

- Ans
- 1. 17 : 19 : 21
  - 2. 8 : 9 : 11
  - 3. 21 : 26 : 36
  - 4. 23 : 25 : 27

Question ID : 26433082367  
Status : Answered  
Chosen Option : 4

Q.9 Two trains running in the same direction at 110 km/h and 90 km/h completely pass one another in 54 sec. If the length of the first train is 130 metres, then find the length of the second train.

- Ans
- 1. 165 metre
  - 2. 180 metre
  - 3. 160 metre
  - 4. 170 metre

Question ID : 26433080195  
Status : Not Answered  
Chosen Option : --

Q.10 A cyclist moving on a circular track of radius 140 m completes one revolution in 2 min. What is the average speed of the cyclist?

- Ans
- 1.  $660 \frac{\text{m}}{\text{min}}$
  - 2.  $440 \frac{\text{m}}{\text{min}}$
  - 3.  $880 \frac{\text{m}}{\text{min}}$
  - 4.  $550 \frac{\text{m}}{\text{min}}$

Question ID : 26433074275  
Status : Not Answered  
Chosen Option : --

Q.11 Find the mean proportional of 0.75 and 3?

- Ans
- 1. 1.25
  - 2. 1.5
  - 3. 1
  - 4. 2

Question ID : 26433081714  
Status : Not Answered  
Chosen Option : --

Q.12 If a reduction of 10% in the price of rice enables a person to obtain 22 kg more for ₹250, then the original price of rice per kg is:

- Ans
- 1. ₹2.42
  - 2. ₹1.62
  - 3. ₹1.26
  - 4. ₹1.86

Question ID : 26433075809  
Status : Not Answered  
Chosen Option : --

Q.13 The HCF and LCM of 2 numbers are 32 and 192. One of the numbers is 64. Find the absolute difference between the numbers.

- Ans
- 1. 16
  - 2. 8
  - 3. 24
  - 4. 32

Question ID : 264330116651  
Status : Answered  
Chosen Option : 3

Q.14 Simplify  $6 + [(16 - 4) \div (2^2 + 2)] - 2$ .

- Ans
- 1. 4
  - 2. 8
  - 3. 6
  - 4. 2

Question ID : 26433079766  
Status : Answered  
Chosen Option : 3

Q.15 The expenses on rice, petrol and oil of a family are in the ratio 8 : 11 : 6. If the prices of these items are increased by 10%, 20% and 30%, respectively, then the total expenses of the family on these items are increased by:

- Ans
- 1. 20.8%
  - 2. 20.2%
  - 3. 19.8%
  - 4. 19.2%

Question ID : 26433080356  
Status : Not Answered  
Chosen Option : --

Q.16 A school manager decides to build a new school building in 40 days. He employs 100 men in the beginning and 100 men after 35 days and completes the construction within the stipulated time. If he had not employed the additional men, how many days behind schedule would the school building have been completed?

- Ans
- 1. 2 days
  - 2. 3 days
  - 3. 4 days
  - 4. 5 days

Question ID : 26433075104  
Status : Not Answered  
Chosen Option : --

Q.17 ₹12,000 becomes ₹15,972 in a certain period of time at the rate of 10% per annum on compound interest, compounding annually. Find the period of time.

- Ans
- 1. 1 year
  - 2. 4 years
  - 3. 2 years
  - 4. 3 years

Question ID : 26433080123  
Status : Answered  
Chosen Option : 2

Q.18 The marked price of a hair dryer is Rs.10,550. The shopkeeper offers a discount of 18% on it. Find its selling price.

- Ans
- 1. Rs.8,453
  - 2. Rs.8,651
  - 3. Rs.8,052
  - 4. Rs.7,652

Question ID : 26433075235  
Status : Answered  
Chosen Option : 4

Q.19 The marked price of a mobile phone was ₹10,000. The shop owner offered 10% discount but on further request by the customer, he sold it at ₹8500 after giving a cash discount. How much is this cash discount in percentage (up to 2 decimal places)?

- Ans
- 1. 6.25%
  - 2. 5.25%
  - 3. 6.65%
  - 4. 5.56%

Question ID : 26433082385  
Status : Not Answered  
Chosen Option : --

Q.20 What is the volume of a cone whose height is 24 cm and radius is 14 cm?

- Ans
- 1. 4298 cm<sup>3</sup>
  - 2. 4928 cm<sup>3</sup>
  - 3. 9428 cm<sup>3</sup>
  - 4. 4982 cm<sup>3</sup>

Question ID : 26433073046  
Status : Not Answered  
Chosen Option : --



Q.1 Fill in the blanks with appropriate homonym.

At a particular \_\_\_\_\_ of life, the body goes through some unnecessary changes.

- Ans
- 1. Stage (a raised platform)
  - 2. Plane
  - 3. Stage (step)
  - 4. Plain

Question ID : 26433092933  
Status : Answered  
Chosen Option : 3

Q.2 Parts of the following sentence have been underlined and given as options. Select the option that contains an error.

Jiten and Hiru loves to eat French fries for lunch.

- Ans
- 1. French fries
  - 2. loves
  - 3. lunch
  - 4. eat

Question ID : 26433089369  
Status : Answered  
Chosen Option : 2

Q.3 Select the most appropriate homonym of the given word.

Blue

- Ans
- 1. Bellow
  - 2. Blew
  - 3. Below
  - 4. Blow

Question ID : 26433086347  
Status : Not Attempted and Marked For Review  
Chosen Option : --

Q.4 Select the most appropriate option that can substitute the underlined word in the given sentence.

Mr. Saxena has espoused a child from an orphanage.

- Ans
- 1. adapted
  - 2. adepted
  - 3. accepted
  - 4. adopted

Question ID : 264330101274  
Status : Answered  
Chosen Option : 4

Q.5 Select the most appropriate ANTONYM of the given word.

Accurate

- Ans
- 1. Heist
  - 2. Proficient
  - 3. Unreliable
  - 4. Fiesta

Question ID : 26433073987  
Status : Answered  
Chosen Option : 4

Q.6 Select the most appropriate option to fill in the blank.

His seat was the \_\_\_\_\_ in our row.

- Ans
- 1. farthest
  - 2. near to
  - 3. further
  - 4. far

Question ID : 26433090563  
Status : Not Answered  
Chosen Option : --

Q.7 The sentence given below has one misspelt word. Spot the INCORRECTLY spelt word and select its correct spelling.

Abbreviations are not understood by everyone.

- Ans
- 1. Abreviashions
  - 2. Abbriviations
  - 3. Abbreviations
  - 4. Abriviations

Question ID : 26433073548  
Status : Not Answered  
Chosen Option : --

Q.8 Select the most appropriate ANTONYM of the given word.

Put forth

- Ans
- 1. Stop
  - 2. Against
  - 3. Apply
  - 4. Conceal

Question ID : 26433090797  
Status : Answered  
Chosen Option : 1

Q.9 Select the most appropriate synonym of the underlined word in the given sentence.

No one can exterminate poverty from this world.

- Ans
- 1. plant
  - 2. endure
  - 3. secure
  - 4. eradicate

Question ID : 26433092912  
Status : Answered  
Chosen Option : 4

Q.10 Select the most appropriate synonym of the underlined word.

We had to move slowly through the narrow alley.

- Ans
- 1. Imminent
  - 2. Dreary
  - 3. Maximum
  - 4. Cramped

Question ID : 26433088762  
Status : Answered  
Chosen Option : 3

Q.11 Select the most appropriate option that can substitute the underlined segment in the given sentence.

We should also learn to trust what he says. After all, he is a reformed person now.

- Ans
- 1. to give someone the benefit of the doubt
  - 2. to make matters worse
  - 3. no pain, no gain
  - 4. to wrap our head around something

Question ID : 26433072097  
Status : Marked For Review  
Chosen Option : 1

Q.12 Select the most appropriate option to substitute the underlined segment in the given sentence.

The manager have get hot under the collar when the workers demanded higher wages.

- Ans
- 1. had get under the collar
  - 2. got hot under the collar
  - 3. get hot under the collar
  - 4. will got under the collar

Question ID : 26433073923  
Status : Not Answered  
Chosen Option : --

Q.13 Select the most appropriate option to substitute the underlined segment in the given sentence.

The bufotoxin present on a toad's skin can irritate you but touching a toad shall not cause you warts.

- Ans
- 1. was not cause
  - 2. do not cause
  - 3. has not give
  - 4. won't give

Question ID : 26433089832  
Status : Answered  
Chosen Option : 4

Q.14 Select the most appropriate synonym of the given word.

Manifest

- Ans
- 1. Apparent
  - 2. Cryptic
  - 3. Natural
  - 4. Concealed

Question ID : 26433073862  
Status : Answered  
Chosen Option : 4

Q.15 Select the most appropriate option to fill in the blank.

The minister reached the venue of the programme before time which \_\_\_\_\_ wonder and awe among the organisers.

- Ans
- 1. strengthened
  - 2. draped
  - 3. created
  - 4. lagged

Question ID : 26433073789  
Status : Answered  
Chosen Option : 3

### Comprehension:

In the following passage, some words have been deleted. Read the passage carefully and select the most appropriate option to fill in each blank.

Maybe you're bored of bananas, apples and grapes and need a fresh produce pick? A nutrient-rich serving of kiwi fruit may be just what you need. A serving of kiwi fruit (2 kiwis) has twice the vitamin C of an orange, (1) \_\_\_\_\_ potassium as a banana and the fibre of a bowl of whole grain cereal—all for less than 100 calories!

The fuzzy fruit is sky-high in both soluble and insoluble fibre, both of which are essential for promoting heart health, (2) \_\_\_\_\_ digestion and lowering cholesterol levels—that's a winning trifecta. Kiwi fruit has also been considered a 'nutritional all-star,' as Rutgers University researchers found that kiwi fruit has the best nutrient density of 21 commonly consumed fruits.

Along with vitamin C, kiwi fruits are rich in many bioactive compounds that have antioxidant capacity to help protect against free radicals, harmful by-products produced in the body. If you want clean energy, think of kiwi fruit because they're rich in magnesium, a nutrient essential to (3) \_\_\_\_\_ food into energy.

A kiwi fruit also doubles as a peeper-keeper by supplying your eyes with protective lutein, a carotenoid that's concentrated in eye tissues and helps protect against harmful free radicals. Kiwi fruit is also (4) \_\_\_\_\_ with blood pressure-lowering potassium. In fact, a 100-gram serving of kiwi fruit—that's about one large kiwi—provides 15% of the Recommended Daily Allowance (RDA) of potassium.

Kiwi fruit has been growing in New Zealand for over 100 years. Once the fruit gained in popularity, other countries started to grow them including Italy, France, Chile, Japan, South Korea and Spain. At first, kiwis were referred to as 'Yang Tao' or 'Chinese Gooseberry,' but the name was (5) \_\_\_\_\_ changed to kiwi fruit so that everyone would know where the fruit came from.

### SubQuestion No : 16

**Q.16** Select the most appropriate option to fill in blank number 1.

- Ans  1. lot of  
 2. as much  
 3. as much as  
 4. much of

Question ID : 26433088913

Status : **Marked For Review**

Chosen Option : 1

### Comprehension:

In the following passage, some words have been deleted. Read the passage carefully and select the most appropriate option to fill in each blank.

Maybe you're bored of bananas, apples and grapes and need a fresh produce pick? A nutrient-rich serving of kiwi fruit may be just what you need. A serving of kiwi fruit (2 kiwis) has twice the vitamin C of an orange, (1) \_\_\_\_\_ potassium as a banana and the fibre of a bowl of whole grain cereal—all for less than 100 calories!

The fuzzy fruit is sky-high in both soluble and insoluble fibre, both of which are essential for promoting heart health, (2) \_\_\_\_\_ digestion and lowering cholesterol levels—that's a winning trifecta. Kiwi fruit has also been considered a 'nutritional all-star,' as Rutgers University researchers found that kiwi fruit has the best nutrient density of 21 commonly consumed fruits.

Along with vitamin C, kiwi fruits are rich in many bioactive compounds that have antioxidant capacity to help protect against free radicals, harmful by-products produced in the body. If you want clean energy, think of kiwi fruit because they're rich in magnesium, a nutrient essential to (3) \_\_\_\_\_ food into energy.

A kiwi fruit also doubles as a peeper-keeper by supplying your eyes with protective lutein, a carotenoid that's concentrated in eye tissues and helps protect against harmful free radicals. Kiwi fruit is also (4) \_\_\_\_\_ with blood pressure-lowering potassium. In fact, a 100-gram serving of kiwi fruit—that's about one large kiwi—provides 15% of the Recommended Daily Allowance (RDA) of potassium.

Kiwi fruit has been growing in New Zealand for over 100 years. Once the fruit gained in popularity, other countries started to grow them including Italy, France, Chile, Japan, South Korea and Spain. At first, kiwis were referred to as 'Yang Tao' or 'Chinese Gooseberry,' but the name was (5) \_\_\_\_\_ changed to kiwi fruit so that everyone would know where the fruit came from.

### SubQuestion No : 17

Q.17 Select the most appropriate option to fill in blank number 2.

- Ans  1. regulating  
 2. repressing  
 3. taming  
 4. constraining

Question ID : 26433088914

Status : Answered

Chosen Option : 1

### Comprehension:

In the following passage, some words have been deleted. Read the passage carefully and select the most appropriate option to fill in each blank.

Maybe you're bored of bananas, apples and grapes and need a fresh produce pick? A nutrient-rich serving of kiwi fruit may be just what you need. A serving of kiwi fruit (2 kiwis) has twice the vitamin C of an orange, (1) \_\_\_\_\_ potassium as a banana and the fibre of a bowl of whole grain cereal—all for less than 100 calories!

The fuzzy fruit is sky-high in both soluble and insoluble fibre, both of which are essential for promoting heart health, (2) \_\_\_\_\_ digestion and lowering cholesterol levels—that's a winning trifecta. Kiwi fruit has also been considered a 'nutritional all-star,' as Rutgers University researchers found that kiwi fruit has the best nutrient density of 21 commonly consumed fruits.

Along with vitamin C, kiwi fruits are rich in many bioactive compounds that have antioxidant capacity to help protect against free radicals, harmful by-products produced in the body. If you want clean energy, think of kiwi fruit because they're rich in magnesium, a nutrient essential to (3) \_\_\_\_\_ food into energy.

A kiwi fruit also doubles as a peeper-keeper by supplying your eyes with protective lutein, a carotenoid that's concentrated in eye tissues and helps protect against harmful free radicals. Kiwi fruit is also (4) \_\_\_\_\_ with blood pressure-lowering potassium. In fact, a 100-gram serving of kiwi fruit—that's about one large kiwi—provides 15% of the Recommended Daily Allowance (RDA) of potassium.

Kiwi fruit has been growing in New Zealand for over 100 years. Once the fruit gained in popularity, other countries started to grow them including Italy, France, Chile, Japan, South Korea and Spain. At first, kiwis were referred to as 'Yang Tao' or 'Chinese Gooseberry,' but the name was (5) \_\_\_\_\_ changed to kiwi fruit so that everyone would know where the fruit came from.

### SubQuestion No : 18

Q.18 Select the most appropriate option to fill in blank number 3.

- Ans
- 1. vary
  - 2. revise
  - 3. convert
  - 4. displace

Question ID : 26433088915

Status : Answered

Chosen Option : 3

### Comprehension:

In the following passage, some words have been deleted. Read the passage carefully and select the most appropriate option to fill in each blank.

Maybe you're bored of bananas, apples and grapes and need a fresh produce pick? A nutrient-rich serving of kiwi fruit may be just what you need. A serving of kiwi fruit (2 kiwis) has twice the vitamin C of an orange, (1) \_\_\_\_\_ potassium as a banana and the fibre of a bowl of whole grain cereal—all for less than 100 calories!

The fuzzy fruit is sky-high in both soluble and insoluble fibre, both of which are essential for promoting heart health, (2) \_\_\_\_\_ digestion and lowering cholesterol levels—that's a winning trifecta. Kiwi fruit has also been considered a 'nutritional all-star,' as Rutgers University researchers found that kiwi fruit has the best nutrient density of 21 commonly consumed fruits.

Along with vitamin C, kiwi fruits are rich in many bioactive compounds that have antioxidant capacity to help protect against free radicals, harmful by-products produced in the body. If you want clean energy, think of kiwi fruit because they're rich in magnesium, a nutrient essential to (3) \_\_\_\_\_ food into energy.

A kiwi fruit also doubles as a peeper-keeper by supplying your eyes with protective lutein, a carotenoid that's concentrated in eye tissues and helps protect against harmful free radicals. Kiwi fruit is also (4) \_\_\_\_\_ with blood pressure-lowering potassium. In fact, a 100-gram serving of kiwi fruit—that's about one large kiwi—provides 15% of the Recommended Daily Allowance (RDA) of potassium.

Kiwi fruit has been growing in New Zealand for over 100 years. Once the fruit gained in popularity, other countries started to grow them including Italy, France, Chile, Japan, South Korea and Spain. At first, kiwis were referred to as 'Yang Tao' or 'Chinese Gooseberry,' but the name was (5) \_\_\_\_\_ changed to kiwi fruit so that everyone would know where the fruit came from.

### SubQuestion No : 19

**Q.19 Select the most appropriate option to fill in blank number 4.**

- Ans
- 1. burdened
  - 2. condensed
  - 3. overstuffed
  - 4. packed

Question ID : 26433088916

Status : Answered

Chosen Option : 3



### Comprehension:

In the following passage, some words have been deleted. Read the passage carefully and select the most appropriate option to fill in each blank.

Maybe you're bored of bananas, apples and grapes and need a fresh produce pick? A nutrient-rich serving of kiwi fruit may be just what you need. A serving of kiwi fruit (2 kiwis) has twice the vitamin C of an orange, (1) \_\_\_\_\_ potassium as a banana and the fibre of a bowl of whole grain cereal—all for less than 100 calories!

The fuzzy fruit is sky-high in both soluble and insoluble fibre, both of which are essential for promoting heart health, (2) \_\_\_\_\_ digestion and lowering cholesterol levels—that's a winning trifecta. Kiwi fruit has also been considered a 'nutritional all-star,' as Rutgers University researchers found that kiwi fruit has the best nutrient density of 21 commonly consumed fruits.

Along with vitamin C, kiwi fruits are rich in many bioactive compounds that have antioxidant capacity to help protect against free radicals, harmful by-products produced in the body. If you want clean energy, think of kiwi fruit because they're rich in magnesium, a nutrient essential to (3) \_\_\_\_\_ food into energy.

A kiwi fruit also doubles as a peeper-keeper by supplying your eyes with protective lutein, a carotenoid that's concentrated in eye tissues and helps protect against harmful free radicals. Kiwi fruit is also (4) \_\_\_\_\_ with blood pressure-lowering potassium. In fact, a 100-gram serving of kiwi fruit—that's about one large kiwi—provides 15% of the Recommended Daily Allowance (RDA) of potassium.

Kiwi fruit has been growing in New Zealand for over 100 years. Once the fruit gained in popularity, other countries started to grow them including Italy, France, Chile, Japan, South Korea and Spain. At first, kiwis were referred to as 'Yang Tao' or 'Chinese Gooseberry,' but the name was (5) \_\_\_\_\_ changed to kiwi fruit so that everyone would know where the fruit came from.

### SubQuestion No : 20

Q.20 Select the most appropriate option to fill in blank number 5.

- Ans
- 1. anon
  - 2. presently
  - 3. ultimately
  - 4. directly

Question ID : 26433088917

Status : Answered

Chosen Option : 4

Section : Part-D-Hindi

Q.1 'मैं तुम्हारे \_\_\_\_\_ भविष्य की कामना करता हूँ।' वाक्य में रिक्त स्थान की पूर्ति शुद्ध शब्द द्वारा कीजिए।

- Ans
- 1. उज्वल
  - 2. उजवल
  - 3. उज्ज्वल
  - 4. उज्वल्ल

Question ID : 26433069703

Status : Not Answered

Chosen Option : --

Q.2 निम्न वाक्य में रिक्त स्थान की पूर्ति उचित संज्ञा शब्द से करें।  
वह अभी-अभी \_\_\_\_\_ के घर गया है।

- Ans
- 1. कोई
  - 2. दूसरे
  - 3. लोकेश
  - 4. किसी

Question ID : 26433085023  
Status : Not Answered  
Chosen Option : --

Q.3 “आकाश में तम का साम्राज्य था।”  
उक्त वाक्य में प्रयुक्त ‘तम’ के स्थान पर उसके विलोम शब्द का प्रयोग निम्न में से किस वाक्य में किया गया है?

- Ans
- 1. आकाश में प्रकाश का साम्राज्य था।
  - 2. आकाश में तिमिर का साम्राज्य था।
  - 3. आकाश में तारों का साम्राज्य था।
  - 4. आकाश में अंधकार का साम्राज्य था।

Question ID : 26433067024  
Status : Not Answered  
Chosen Option : --

Q.4 निम्न वाक्य में रेखांकित अंश के स्थान पर आने वाले सर्वाधिक उपयुक्त विकल्प का चयन कीजिए।  
मैंने उसे बहुत समझाया पर वहाँ न मानी।

- Ans
- 1. तुम
  - 2. कि
  - 3. वह
  - 4. मैं

Question ID : 26433066879  
Status : Not Answered  
Chosen Option : --

Q.5 “आप अपने लक्ष्य तक अवश्य पहुँचेंगे।”  
उक्त वाक्य में प्रयुक्त ‘लक्ष्य’ के स्थान पर उसके समानार्थी शब्द का प्रयोग निम्न में से किस वाक्य में किया गया है?

- Ans
- 1. आप अपने अंत तक अवश्य पहुँचेंगे।
  - 2. आप अपने मार्ग तक अवश्य पहुँचेंगे।
  - 3. आप अपने परिवार तक अवश्य पहुँचेंगे।
  - 4. आप अपने गंतव्य तक अवश्य पहुँचेंगे।

Question ID : 26433067030  
Status : Not Answered  
Chosen Option : --

Q.6 निम्नलिखित वाक्य में रिक्त स्थानों की पूर्ति उचित एकार्थी शब्दों से करें।  
\_\_\_\_\_ बदलती नहीं है और \_\_\_\_\_ हमेशा बदलती है।

- Ans
- 1. सत्य-सपना
  - 2. झूठ-मौसम
  - 3. ऋत-ऋतु
  - 4. टुटा-सपना

Question ID : 26433091323  
Status : Not Answered  
Chosen Option : --

Q.7 नीचे दिए गए वाक्य के रेखांकित भाग को उचित वाक्य-खंड से प्रतिस्थापित करें।  
'हमारे गले में पराधीनता की बेड़ियाँ पड़ी थीं।'

- Ans
- 1. हमारे गले में स्वाधीनता की बेड़ियाँ
  - 2. हमारे पैरों में पराधीनता की बेड़ियाँ
  - 3. हमारे पैरों में पराधीनता की हथकड़ियाँ
  - 4. हमारे हाथों में पराधीनता की बेड़ियाँ

Question ID : 26433062809  
Status : Not Answered  
Chosen Option : --

Q.8 निम्न वाक्य में रेखांकित शब्द के स्थान पर सर्वोचित विकल्प चुनिए।  
वह मिलनसार था, इसलिए उसने कई अपने बना लिए।

- Ans
- 1. प्रेमी
  - 2. भक्त
  - 3. शत्रु
  - 4. मित्र

Question ID : 26433084958  
Status : Not Answered  
Chosen Option : --

Q.9 दिए गए मुहावरे में रेखांकित अंश के स्थान पर सबसे उपयुक्त विकल्प कौन-सा होगा?  
छाती पर चना दलना

- Ans
- 1. मक्का
  - 2. मूंग
  - 3. तेल
  - 4. पानी

Question ID : 26433066747  
Status : Not Answered  
Chosen Option : --

Q.10 'किनारा' का पर्यायवाची शब्द इनमें से क्या होगा?

- Ans
- 1. पानी
  - 2. तट
  - 3. आलय
  - 4. तारिका

Question ID : 26433066906  
Status : Not Answered  
Chosen Option : --

Q.11 निम्नलिखित में से शुद्ध वाक्य कौन-सा है?

- Ans
- 1. शरीर पर कई अंग होते हैं।
  - 2. विदुषी स्त्री का सम्मान करना चाहिए।
  - 3. मैं आप वहाँ जाऊँगा।
  - 4. अपने बच्चों बहादुर बनाओ।

Question ID : 26433066999  
Status : Not Answered  
Chosen Option : --

Q.12 'सिर उठाना' मुहावरे का उचित अर्थ है-

- Ans
- 1. हर स्थिति में साथ देना
  - 2. सिर ऊपर करना
  - 3. विरोध में खड़ा होना
  - 4. पीछे पड़ना

Question ID : 26433065876  
Status : Not Answered  
Chosen Option : --

Q.13 निम्नलिखित विकल्पों में से कौनसा एक वाक्य साधारण क्रिया-विशेषण से सम्बन्ध नहीं रखता है?

- Ans
- 1. सेवक कहाँ गया।
  - 2. अरे! वह अब पढ़ना चाहता है।
  - 3. हाय! वह वहाँ जाता है।
  - 4. हाय! वह यहाँ आता है।

Question ID : 26433091235  
Status : Not Answered  
Chosen Option : --

Q.14 निम्नलिखित वाक्यांश के लिए एक सार्थक शब्द चुनिए।  
वह पर्वत, जहाँ से सूर्य का अस्त माना जाता हो -

- Ans
- 1. अस्तगामी
  - 2. अनुपम
  - 3. अतुल
  - 4. अस्ताचल

Question ID : 26433062735  
Status : Not Answered  
Chosen Option : --

Q.15 निम्न वाक्यांश के लिए सार्थक शब्द का चयन विकल्पों में से कीजिए।  
जानने की इच्छा

- Ans
- 1. लिप्सा
  - 2. पिपासा
  - 3. जिज्ञासा
  - 4. आशा

Question ID : 26433070086  
Status : Not Answered  
Chosen Option : --

**Comprehension:**

निम्नलिखित गद्यांश में कुछ शब्दों को हटा दिया गया है। दिए गए विकल्पों की सहायता से रिक्त स्थानों की पूर्ति कीजिए। प्रत्येक संख्या के लिए सबसे उपयुक्त विकल्प का चयन कीजिए।  
आज फैशन का 1. \_\_\_\_\_ है। एक देश ही नहीं, सारा विश्व इससे 2. \_\_\_\_\_ है। विश्व में वैज्ञानिक 3. \_\_\_\_\_ चहुमुखी क्षेत्रों में हुई है। नए-नए 4. \_\_\_\_\_ के विकसित होने के कारण फैशन की दुनिया भी बढ़ती चली गई है। कल तक जो नया माना जाता था, आज पुराना लगने लगता है। विभिन्न औद्योगिक संस्थान नई से नई वस्तुएँ बनाते हैं और सभी को 5. \_\_\_\_\_ करने के लिए उनका व्यापक प्रचार करते हैं।

**SubQuestion No : 16**

Q.16 रिक्त स्थान 1 की पूर्ति के लिए सबसे उपयुक्त विकल्प का चयन कीजिए।

- Ans
- 1. हाल
  - 2. युग
  - 3. प्रतियोगिता
  - 4. कार्य

Question ID : 264330111101  
Status : Not Answered  
Chosen Option : --

**Comprehension:**

निम्नलिखित गद्यांश में कुछ शब्दों को हटा दिया गया है। दिए गए विकल्पों की सहायता से रिक्त स्थानों की पूर्ति कीजिए। प्रत्येक संख्या के लिए सबसे उपयुक्त विकल्प का चयन कीजिए।  
आज फैशन का 1. \_\_\_\_\_ है। एक देश ही नहीं, सारा विश्व इससे 2. \_\_\_\_\_ है। विश्व में वैज्ञानिक 3. \_\_\_\_\_ चहुमुखी क्षेत्रों में हुई है। नए-नए 4. \_\_\_\_\_ के विकसित होने के कारण फैशन की दुनिया भी बढ़ती चली गई है। कल तक जो नया माना जाता था, आज पुराना लगने लगता है। विभिन्न औद्योगिक संस्थान नई से नई वस्तुएँ बनाते हैं और सभी को 5. \_\_\_\_\_ करने के लिए उनका व्यापक प्रचार करते हैं।

**SubQuestion No : 17**

Q.17 रिक्त स्थान 2 की पूर्ति के लिए सबसे उपयुक्त विकल्प का चयन कीजिए।

- Ans
- 1. सहमा
  - 2. उलझा
  - 3. समाहित
  - 4. प्रभावित

Question ID : 264330111102

Status : Not Answered

Chosen Option : --

**Comprehension:**

निम्नलिखित गद्यांश में कुछ शब्दों को हटा दिया गया है। दिए गए विकल्पों की सहायता से रिक्त स्थानों की पूर्ति कीजिए। प्रत्येक संख्या के लिए सबसे उपयुक्त विकल्प का चयन कीजिए।  
आज फैशन का 1. \_\_\_\_\_ है। एक देश ही नहीं, सारा विश्व इससे 2. \_\_\_\_\_ है। विश्व में वैज्ञानिक 3. \_\_\_\_\_ चहुमुखी क्षेत्रों में हुई है। नए-नए 4. \_\_\_\_\_ के विकसित होने के कारण फैशन की दुनिया भी बढ़ती चली गई है। कल तक जो नया माना जाता था, आज पुराना लगने लगता है। विभिन्न औद्योगिक संस्थान नई से नई वस्तुएँ बनाते हैं और सभी को 5. \_\_\_\_\_ करने के लिए उनका व्यापक प्रचार करते हैं।

**SubQuestion No : 18**

Q.18 रिक्त स्थान 3 की पूर्ति के लिए सबसे उपयुक्त विकल्प का चयन कीजिए।

- Ans
- 1. व्यापकता
  - 2. भाव
  - 3. दुर्गति
  - 4. प्रगति

Question ID : 264330111103

Status : Not Answered

Chosen Option : --

**Comprehension:**

निम्नलिखित गद्यांश में कुछ शब्दों को हटा दिया गया है। दिए गए विकल्पों की सहायता से रिक्त स्थानों की पूर्ति कीजिए। प्रत्येक संख्या के लिए सबसे उपयुक्त विकल्प का चयन कीजिए।  
आज फैशन का 1. \_\_\_\_\_ है। एक देश ही नहीं, सारा विश्व इससे 2. \_\_\_\_\_ है। विश्व में वैज्ञानिक 3. \_\_\_\_\_ चहुमुखी क्षेत्रों में हुई है। नए-नए 4. \_\_\_\_\_ के विकसित होने के कारण फैशन की दुनिया भी बढ़ती चली गई है। कल तक जो नया माना जाता था, आज पुराना लगने लगता है। विभिन्न औद्योगिक संस्थान नई से नई वस्तुएँ बनाते हैं और सभी को 5. \_\_\_\_\_ करने के लिए उनका व्यापक प्रचार करते हैं।

**SubQuestion No : 19**

Q.19 रिक्त स्थान 4 की पूर्ति के लिए सबसे उपयुक्त विकल्प का चयन कीजिए।

- Ans  1. अनिवार्यता  
 2. लोगों  
 3. उपकरणों  
 4. देशों

Question ID : 264330111104

Status : Not Answered

Chosen Option : --

**Comprehension:**

निम्नलिखित गद्यांश में कुछ शब्दों को हटा दिया गया है। दिए गए विकल्पों की सहायता से रिक्त स्थानों की पूर्ति कीजिए। प्रत्येक संख्या के लिए सबसे उपयुक्त विकल्प का चयन कीजिए।  
आज फैशन का 1. \_\_\_\_\_ है। एक देश ही नहीं, सारा विश्व इससे 2. \_\_\_\_\_ है। विश्व में वैज्ञानिक 3. \_\_\_\_\_ चहुमुखी क्षेत्रों में हुई है। नए-नए 4. \_\_\_\_\_ के विकसित होने के कारण फैशन की दुनिया भी बढ़ती चली गई है। कल तक जो नया माना जाता था, आज पुराना लगने लगता है। विभिन्न औद्योगिक संस्थान नई से नई वस्तुएँ बनाते हैं और सभी को 5. \_\_\_\_\_ करने के लिए उनका व्यापक प्रचार करते हैं।

**SubQuestion No : 20**

Q.20 रिक्त स्थान 5 की पूर्ति के लिए सबसे उपयुक्त विकल्प का चयन कीजिए।

- Ans  1. दिखावा  
 2. आकर्षित  
 3. बहलावा  
 4. छलावा

Question ID : 264330111105

Status : Not Answered

Chosen Option : --

## Constable GD in CAPFs SSF Rifleman GD in Assam Rifles and Sepoy in NCB Examination 2022

Roll Number	@Qmaths Telegram Channel
Candidate Name	@Qmaths Telegram Channel
Venue Name	iON Digital Zone iDZ Gegal Industrial Area
Exam Date	16/01/2023
Exam Time	5:15 PM - 6:15 PM
Subject	Constable GD Examination 2022

### Section : Part-A-General Intelligence and Reasoning

**Q.1** Select the number from among the given options that can replace the question mark (?) in the following series.  
784, 568, 443, ?, 352

- Ans
- 1. 382
  - 2. 361
  - 3. 427
  - 4. 379

Question ID : 26433074535  
Status : Answered  
Chosen Option : 4

**Q.2** X and Z are sisters. Y is the brother of Z. S is the daughter of Z. T is the brother of S. T is married to U. How is Y related to S?

- Ans
- 1. Father
  - 2. Mother's brother
  - 3. Brother
  - 4. Mother's father

Question ID : 26433074600  
Status : Answered  
Chosen Option : 2

**Q.3** Which of the following numbers will replace the question mark (?) in the given series?  
8, 17, 36, ?, 154

- Ans
- 1. 57
  - 2. 86
  - 3. 46
  - 4. 75

Question ID : 26433076737  
Status : Answered  
Chosen Option : 4



**Q.4** Three different positions of the same dice are shown. Find the number on the face opposite the face showing '3'.

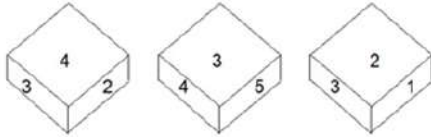


Figure 1      Figure 2      Figure 3

- Ans**
- 1. 4
  - 2. 2
  - 3. 5
  - 4. 6

Question ID : 26433089453  
 Status : Answered  
 Chosen Option : 4

**Q.5** Select the correct mirror image of the given figure when the mirror is placed at MN as shown below.



- Ans**
- 1. YmoIloЯTzɁ
  - 2. YmoIloɾTzɁ
  - 3. YmoIloЯTzɁ
  - 4. YmoIloɾTzɁ

Question ID : 26433085561  
 Status : Answered  
 Chosen Option : 2

**Q.6** Which option represents the correct order of the given words as they would appear in the English dictionary?

- 1 dream
- 2 drown
- 3 drone
- 4 dropped
- 5 drama

- Ans**
- 1. 5,2,3,1,4
  - 2. 5,3,1,4,2
  - 3. 5,4,3,1,2
  - 4. 5,1,3,4,2

Question ID : 26433069289  
 Status : Answered  
 Chosen Option : 4

Q.7 Which of the following letter-clusters will replace the question mark (?) in the given series?  
YSEA, WQGC, UOIE, ?, QKMI

- Ans  1. SMLH  
 2. RMLG  
 3. SMKG  
 4. RMLH

Question ID : 26433076439  
Status : Answered  
Chosen Option : 3

Q.8 Three statements are given followed by two conclusions. Assuming the statements to be true, even if they seem to be at variance with commonly known facts, decide which of the conclusions logically follow(s) from the statements.

Statements:

Some trains are buses.

No bus is a car.

Some cars are bikes.

Conclusions:

1. Some bikes are cars.

2. Some bikes are trains.

- Ans  1. Neither conclusion 1 nor 2 follows.  
 2. Only conclusion 2 follows.  
 3. Both conclusions 1 and 2 follow.  
 4. Only conclusion 1 follows.

Question ID : 26433089423  
Status : Answered  
Chosen Option : 4

Q.9 Which two numbers (not digits), from the given options, should be interchanged to make the given equation correct?  
 $158 - 64 \times 6 \div 2 = 4 \times 15 \div 3$

- Ans  1. 15 and 158  
 2. 64 and 6  
 3. 64 and 4  
 4. 6 and 4

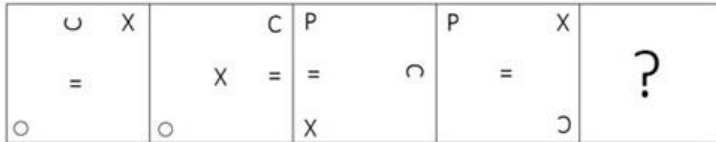
Question ID : 26433082479  
Status : Answered  
Chosen Option : 4

Q.10 Which letter-cluster will replace the question mark (?) to complete the given series?  
ABDG, DEGJ, ?, JKMP, MNPS

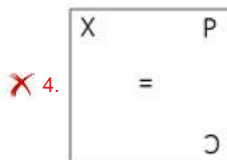
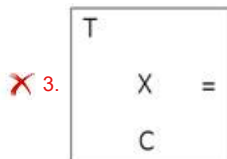
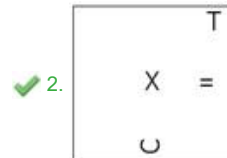

- Ans  1. FHIK  
 2. GHKM  
 3. GHJM  
 4. FGIL

Question ID : 26433067717  
Status : Answered  
Chosen Option : 3

Q.11 Which figure should replace the question mark (?) if the series were to be continued?



Ans



Question ID : 26433076641  
 Status : Answered  
 Chosen Option : 2

Q.12 Six students are sitting around a circular table facing the centre. F is an immediate neighbour of A. D sits second to the right of E. B is an immediate neighbour of E and sits second to the right of C. F sits second to the right of D. A is not an immediate neighbour of E. Who is sitting between D and E?

- Ans
- ✗ 1. C
  - ✗ 2. F
  - ✓ 3. B
  - ✗ 4. A

Question ID : 26433092766  
 Status : Not Answered  
 Chosen Option : --

Q.13 Five people A, B, C, D, and E are sitting in a straight row facing the North. A is sitting to the immediate left of C. Only C is sitting between A and E. B is sitting to the right of E. D is sitting to the right of B. Who is sitting at the extreme left of the row?

- Ans
- ✗ 1. D
  - ✗ 2. C
  - ✓ 3. A
  - ✗ 4. B

Question ID : 26433074621  
 Status : Not Answered  
 Chosen Option : --

Q.14 Which two signs should be interchanged to make the below equation mathematically correct?

$$72 - 36 \times 4 \div 6 + 24 = 42$$

- Ans  1. ÷ and x  
 2. + and -  
 3. - and ÷  
 4. × and +

Question ID : 264330117535  
Status : Answered  
Chosen Option : 1

Q.15 Select the option that is related to the third word in the same way as the second word is related to the first word. (The words must be considered as meaningful English words and must not be related to each other based on the number of letters/number of consonants/vowels in the word.)

Resistance : Ohm :: Energy : ?

- Ans  1. Volt  
 2. Strength  
 3. Watt  
 4. Joule

Question ID : 26433067370  
Status : Answered  
Chosen Option : 4

Q.16 Select the option that is related to the fifth letter-cluster in the same way as the second letter-cluster is related to the first letter-cluster and the fourth letter-cluster is related to the third letter-cluster.

LEAP : KFZQ :: CLOS : BMNT :: EJOT : ?

- Ans  1. KCNS  
 2. DKNU  
 3. KDZO  
 4. DKNS

Question ID : 26433080462  
Status : Answered  
Chosen Option : 2

Q.17 In a certain code language, 'STORK' is written as 'URROO' and 'ASHES' is written as 'CQKBW'. How will 'BUNKE' be written in that language?

- Ans  1. DRPGI  
 2. DSPHG  
 3. DSQGI  
 4. DSQHI

Question ID : 26433069607  
Status : Answered  
Chosen Option : 4

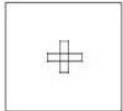
Q.18 Select the option that is related to the fifth number in the same way as the second number is related to the first number and the fourth number is related to the third number.

46 : 11 :: 30 : 7 :: 50 : ?

- Ans
- 1. 8
  - 2. 13
  - 3. 12
  - 4. 9

Question ID : 26433069417  
Status : Answered  
Chosen Option : 3

Q.19 Select the option figure in which the question figure is embedded (Rotation is not allowed).



Ans

- 1.
- 2.
- 3.
- 4.

Question ID : 26433070206  
Status : Answered  
Chosen Option : 2

Q.20 In a code language, 'LEAF' is written as 'EZDK' and 'PLANT' is written as 'SMZKO', how will 'FLOWER' be written in that language?

- Ans
- 1. QDVNKD
  - 2. QDVNKE
  - 3. QDWNKE
  - 4. EDVNKE

Question ID : 26433079392  
Status : Answered  
Chosen Option : 4

**Q.1 In India, Inter-religion marriages are performed under this Act:**

- Ans**
- 1. Indian Succession Act
  - 2. Hindu Marriage and Adoption Act
  - 3. Civil Procedure Code
  - 4. Special Marriage Act

Question ID : 264330116223  
Status : Answered  
Chosen Option : 4

**Q.2 The green revolution in India started in the late 1960s in \_\_\_\_\_.**

- Ans**
- 1. Maharashtra
  - 2. Punjab
  - 3. Uttarakhand
  - 4. Andhra Pradesh

Question ID : 264330116157  
Status : Answered  
Chosen Option : 2

**Q.3 What are the industrially developed urban centers usually surrounded by?**

- Ans**
- 1. agricultural urban hinterland
  - 2. agricultural rural hinterland
  - 3. Costal hinterland
  - 4. seaport hinterland

Question ID : 264330115569  
Status : Answered  
Chosen Option : 1

**Q.4 What is the term used for people who regularly move in and out of poverty line?**

- Ans**
- 1. Occasionally poor
  - 2. Usually Poor
  - 3. Chronic poor
  - 4. Churning poor

Question ID : 264330116077  
Status : Answered  
Chosen Option : 1

**Q.5 The \_\_\_\_\_ allocates ranks and portfolios to the ministers in the states.**

- Ans**
- 1. speaker
  - 2. governor
  - 3. chief minister
  - 4. head of the political party

Question ID : 26433086673  
Status : Answered  
Chosen Option : 3

Q.6 Identify a dwarf planet from the following list.

- Ans
- 1. Neptune
  - 2. Mercury
  - 3. Mars
  - 4. Pluto

Question ID : 26433087885  
Status : Answered  
Chosen Option : 4

Q.7 \_\_\_\_\_ Fundamental duties are listed in Article \_\_\_\_\_ of Part IV A of the Indian Constitution.

- Ans
- 1. 11; 51A
  - 2. 11; 52A
  - 3. 13; 52A
  - 4. 13; 51A

Question ID : 26433089910  
Status : Answered  
Chosen Option : 1

Q.8 2020 Summer Paralympics was hosted by \_\_\_\_\_.

- Ans
- 1. Korea
  - 2. Russia
  - 3. Japan
  - 4. France

Question ID : 264330115915  
Status : Not Answered  
Chosen Option : --

Q.9 The term "LBW" is related to which sport?

- Ans
- 1. Cricket
  - 2. Volleyball
  - 3. Football
  - 4. Badminton

Question ID : 264330116291  
Status : Answered  
Chosen Option : 1

Q.10 The person or entity writing the cheque is known as the payer or \_\_\_\_\_.

- Ans
- 1. drawee
  - 2. producer
  - 3. drawer
  - 4. seller

Question ID : 264330115322  
Status : Answered  
Chosen Option : 1

Q.11 Sher Khan defeated Humayun at Chausa in \_\_\_\_\_.

Ans  1. 1539

2. 1537

3. 1541

4. 1545

Question ID : 264330115703  
Status : Answered  
Chosen Option : 1

Q.12 Which of the following was a provincial capital under the rule of Ashoka?

I. Taxila

II. Ujjain

Ans  1. Neither I nor II

2. Only II

3. Both I and II

4. Only I

Question ID : 26433085216  
Status : Not Answered  
Chosen Option : --

Q.13 Who has been appointed as the 16th Attorney General of India in September 2022?

Ans  1. Mukul Rohatgi

2. Goolam Essaji Vahanvati

3. R Venkataramani

4. Kotayan Katankot Venugopal

Question ID : 264330115025  
Status : Answered  
Chosen Option : 3

Q.14 Who was the Presidential candidate of India by opposition parties in June 2022?

Ans  1. Sonia Gandhi

2. Jairam Ramesh

3. Yashwant Sinha

4. Draupadi Murmu

Question ID : 264330114920  
Status : Answered  
Chosen Option : 3

Q.15 Which of the following organization governs the international trade?

Ans  1. International Labor Organization

2. United Nations Educational, Scientific and Cultural Organization

3. Securities and Exchange Board of India

4. World Trade Organization

Question ID : 264330115384  
Status : Answered  
Chosen Option : 4



Q.16 A specific place of an organism in the food chain is called as \_\_\_\_\_.

- Ans
- 1. standing crop
  - 2. biomass
  - 3. consumer
  - 4. trophic level

Question ID : 264330115253  
Status : Answered  
Chosen Option : 4

Q.17 \_\_\_\_\_ is the chemical formula of ethanoic Acid.

- Ans
- 1.  $\text{CH}_2\text{COOH}$
  - 2.  $\text{CH}_2\text{OH}$
  - 3.  $\text{CH}_3\text{COOH}$
  - 4.  $\text{CH}_3\text{OH}$

Question ID : 264330115155  
Status : Answered  
Chosen Option : 1

Q.18 Makar Sankranti marks the beginning of 'Uttarayana' and is celebrated on \_\_\_\_\_.

- Ans
- 1. 20th January
  - 2. 16th March
  - 3. 14th January
  - 4. 15th February

Question ID : 264330115096  
Status : Answered  
Chosen Option : 3

Q.19 Which of the following dance types is NOT associated with Jharkhand?

- Ans
- 1. Agni
  - 2. Phagua
  - 3. Mardana Jhumar
  - 4. Lavani

Question ID : 26433071688  
Status : Answered  
Chosen Option : 4

Q.20 Which among the following Indian Classical Dancer has been awarded Sangeet Natak Akademi Fellow ( Akademi Ratna)?

- Ans
- 1. Tankeswar Hazarika Borbayan
  - 2. Sarodi Saikia
  - 3. Sonal Mansingh
  - 4. Jogen Dutta Bayan

Question ID : 264330115877  
Status : Not Answered  
Chosen Option : --

Q.1 The ratio of the weight of Ram, Shyam and Mohan is 7 : 8 : 5 respectively. The average weight of Ram, Shyam and Mohan is 80 kg. What is the average weight of Ram and Shyam ?

- Ans
- 1. 95 kg
  - 2. 80 kg
  - 3. 90 kg
  - 4. 85 kg

Question ID : 26433075526  
Status : Answered  
Chosen Option : 3

Q.2 In a 500 m race, P runs at 2 kmph. P gives Q a head start of 20 m and still beats him by 60 seconds. Find the speed of Q.

- Ans
- 1. 1.6 kmph
  - 2. 1.8 kmph
  - 3. 1.9 kmph
  - 4. 1.5 kmph

Question ID : 26433080243  
Status : Answered  
Chosen Option : 2

Q.3 A batsman scored 96 runs which included 2 boundaries and 6 sixes. What percent of his total score did he make by running between the wickets?

- Ans
- 1. 52.68 percent
  - 2. 54.16 percent
  - 3. 64.18 percent
  - 4. 72.16 percent

Question ID : 264330116827  
Status : Answered  
Chosen Option : 2

Q.4 The cost of painting a solid cone at 30 paise per  $\text{cm}^2$  is ₹660. Find the radius of the cone if its slant height is 15 cm. (Use  $\pi = \frac{22}{7}$ )

- Ans
- 1. 50 cm
  - 2. 40 cm
  - 3. 30 cm
  - 4. 20 cm

Question ID : 26433080071  
Status : Answered  
Chosen Option : 4

Q.5 Manoj invests Rs.57,695, which is 11% of his annual income, in mutual funds. What is his monthly income? (Rounded up to 2 decimal places)

- Ans
- 1. Rs.43,708.33
  - 2. Rs.63,441.99
  - 3. Rs.77,266.54
  - 4. Rs.54,329.89

Question ID : 26433082711  
Status : Answered  
Chosen Option : 1

Q.6 Find the value of  $60 \div 5 \times \left(\frac{9}{8} \text{ of } \frac{4}{3} \div \frac{3}{4} \text{ of } \frac{2}{3}\right)$ .

- Ans
- 1. 48
  - 2. 24
  - 3. 12
  - 4. 36

Question ID : 26433074976  
Status : Answered  
Chosen Option : 4

Q.7 If 9 persons can do a job in 18 days, then 18 persons with twice the efficiency can do the same job in:

- Ans
- 1.  $\frac{9}{2}$  days
  - 2.  $\frac{5}{2}$  days
  - 3.  $\frac{11}{2}$  days
  - 4.  $\frac{7}{2}$  days

Question ID : 26433080137  
Status : Answered  
Chosen Option : 1

Q.8 A sphere of radius 6 m is cut into two equal halves. Find the volume of each hemisphere so formed.

(Use  $\pi = \frac{22}{7}$ )

- Ans
- 1. 331.14 m<sup>3</sup>
  - 2. 452.57 m<sup>3</sup>
  - 3. 562.18 m<sup>3</sup>
  - 4. 531.11 m<sup>3</sup>

Question ID : 26433080066  
Status : Answered  
Chosen Option : 2

Q.9 The marked price of a toy is Rs.1,600. If the shopkeeper declares a discount of 10% and then 10% cash discount, then what is the selling price of the toy?

- Ans
- 1. Rs.1,096
  - 2. Rs.1,296
  - 3. Rs.1,240
  - 4. Rs.1,088

Question ID : 26433075661  
Status : Answered  
Chosen Option : 2

Q.10 The valuation of a house depreciates at the rate of 10% in a year, compared to its value at the beginning of that year. If the current value of the house is ₹40,00,000, then what will be the value of house after three years?

- Ans  1. ₹29,16,000  
 2. ₹28,00,000  
 3. ₹29,06,000  
 4. ₹29,26,000

Question ID : 26433075885  
Status : Answered  
Chosen Option : 1

Q.11 Reeta says that she sells her goods at the cost price. If she uses 80 gram weight instead of 100 gram, then what is her profit percentage?

- Ans  1. 10%  
 2. 25%  
 3. 15%  
 4. 20%

Question ID : 26433075654  
Status : Answered  
Chosen Option : 2

Q.12 Find the fourth proportional of  $s^3$ ,  $s^2t$ , and  $st^2$ .

- Ans  1.  $t^3$   
 2.  $st$   
 3.  $t^2$   
 4.  $s^2t^2$

Question ID : 26433080329  
Status : Answered  
Chosen Option : 1

Q.13 Suman and Arun together can finish a piece of work in 96 days, Arun and Rahul in 48 days, and Rahul and Suman in 80 days, then Rahul, Suman, and Arun jointly can finish the same work in approximately how many days?

- Ans  1. 55 days  
 2. 44 days  
 3. 54 days  
 4. 46 days

Question ID : 264330116907  
Status : Answered  
Chosen Option : 4

Q.14 Regularly, a shop offers a 12% discount on the marked price. During festive seasons, it offers a successive discount of 10% and the owner still earns a profit of 5%. What would have been the profit in percentage if only 4% successive discount is offered with regular discount?

- Ans
- 1. 11%
  - 2. 12.5%
  - 3. 11.5%
  - 4. 12%

Question ID : 26433085449  
Status : Not Answered  
Chosen Option : --

Q.15 The average weight of 10 persons increases by 7.9 kg when a new person replaces one of them weighing 20 kg. What is the weight of the new person?

- Ans
- 1. 170 kg
  - 2. 86 kg
  - 3. 99 kg
  - 4. 72 kg

Question ID : 26433079996  
Status : Answered  
Chosen Option : 3

Q.16 Anand can row 8 km/h in still water. It takes him thrice as long to row up as to row down the stream. Find the speed of the stream.

- Ans
- 1. 4 km/h
  - 2. 3 km/h
  - 3. 4.5 km/h
  - 4. 3.5 km/h

Question ID : 26433080197  
Status : Answered  
Chosen Option : 1

Q.17 What is the third proportional of  $5x^2$  and  $3xy$ ?

- Ans
- 1.  $\frac{(9y^2)}{5}$
  - 2.  $\frac{(9x^2y^2)}{5}$
  - 3.  $\frac{(9xy)}{5x}$
  - 4.  $\frac{(9x^2)}{5}$

Question ID : 26433076226  
Status : Answered  
Chosen Option : 1

Q.18 On a certain principal, the compound interest, compounded annually, for the second year at 20% per annum is Rs.1,300. The principal is (consider nearest integral value):

- Ans
- 1. Rs.5,600
  - 2. Rs.5,400
  - 3. Rs.5,416
  - 4. Rs.4,416

Question ID : 26433075390  
Status : Not Answered  
Chosen Option : --

Q.19 Two cars start taking laps of a circular track of 3.6 kms at the same time of 12:00 PM. They start from the same point and they are moving in the same direction. Their speeds are 72 kmph and 90 kmph respectively. At what time will the cars meet again?

- Ans
- 1. 12:12 PM
  - 2. 12:06 PM
  - 3. 12:03 PM
  - 4. 12:09 PM

Question ID : 264330116637  
Status : Not Answered  
Chosen Option : --

Q.20 A shopkeeper sells oil at ₹200 per litre, which he purchased for ₹160 per litre, but he gives only 800 ml of oil instead of 1 litre while selling. Find the actual percentage of profit.

- Ans
- 1. 56.25%
  - 2. 54.25%
  - 3. 52.25%
  - 4. 58.25%

Question ID : 26433080108  
Status : Answered  
Chosen Option : 1

Section : Part-D-English

Q.1 Select the most appropriate meaning of the underlined idiom in the following sentence.

The local police were working hand in glove with Federal Bureau of Investigation to find the reasons behind the murder.

- Ans
- 1. To have liking for each other
  - 2. To be in close association
  - 3. In keeping with
  - 4. To progress at equal rate

Question ID : 26433073877  
Status : Answered  
Chosen Option : 2

**Q.2** Select the most appropriate spelling that can correctly substitute the misspelt underlined segment in the given sentence.

Who will adjudicate on this matter?

- Ans**
- 1. addjudicate
  - 2. adjjudicate
  - 3. adjudccate
  - 4. adjudicate

Question ID : 26433071938  
Status : Answered  
Chosen Option : 4

**Q.3** Select the most appropriate synonym of the given word.

Timid

- Ans**
- 1. Fearful
  - 2. Bold
  - 3. Adventurous
  - 4. Forthcoming

Question ID : 26433073686  
Status : Answered  
Chosen Option : 1

**Q.4** Select the most appropriate ANTONYM of the given word.

Disdain

- Ans**
- 1. Antipathy
  - 2. Scorn
  - 3. Dislike
  - 4. Respect

Question ID : 26433072663  
Status : Answered  
Chosen Option : 4

**Q.5** Select the most appropriate synonym of the underlined word.

The price of fuel is declining as the elections are approaching.

- Ans**
- 1. Extending
  - 2. Exalting
  - 3. Increasing
  - 4. Decreasing

Question ID : 26433084684  
Status : Answered  
Chosen Option : 4

**Q.6** The following sentence has been divided into parts. One of them may contain an error. Select the part that contains the error from the given options. If you don't find any error, mark 'No error' as your answer.

The blind man can perform / wonderfully well even though / he was old now.

- Ans**  1. he was old now  
 2. No error  
 3. The blind man can perform  
 4. wonderfully well even though

Question ID : 26433073764  
Status : Answered  
Chosen Option : 1

**Q.7** Select the most appropriate meaning of the given idiom.

**Bounce something off someone**

- Ans**  1. Distribute materials to the poor and the needy  
 2. Discuss ideas with someone to get their views  
 3. Select members for something without their consent  
 4. Throw stones at others without any reason

Question ID : 26433073489  
Status : Answered  
Chosen Option : 3

**Q.8** Select the most appropriate option that can substitute the underlined segment in the given sentence.

An unexpected power failure which happened besides the recording disheartened all of them.

- Ans**  1. happened during the recording  
 2. happened until the recording  
 3. happened among the recording  
 4. happen between the recording

Question ID : 264330100990  
Status : Answered  
Chosen Option : 1

**Q.9** Identify from the following options the word which is OPPOSITE in meaning to the given word.

**Valiant**

- Ans**  1. Cowardly  
 2. Similar  
 3. Heroic  
 4. Dull

Question ID : 26433088817  
Status : Answered  
Chosen Option : 1



Q.10 Select the most appropriate synonym of the word given in brackets to fill in the blank.

The soldiers exhibited their \_\_\_\_\_ (courage) during the war.

- Ans
- 1. anchor
  - 2. valour
  - 3. candour
  - 4. timidity

Question ID : 26433089075  
Status : Answered  
Chosen Option : 2

Q.11 Select the most appropriate option to fill in the blank.

He fell unconscious due to a snake bite, so the doctor quickly gave him \_\_\_\_\_.

- Ans
- 1. the antibiotic
  - 2. the antigen
  - 3. the antidote
  - 4. the antiquary

Question ID : 26433084653  
Status : Answered  
Chosen Option : 3

Q.12 The sentence given below has one misspelt word. Spot the INCORRECTLY spelt word and select its correct spelling.

He picked up his lugage and crossed the road.

- Ans
- 1. Laggage
  - 2. Luggage
  - 3. Lugaze
  - 4. Lagage

Question ID : 26433073556  
Status : Answered  
Chosen Option : 2

Q.13 Select the correct pair of homonyms to fill in the blanks.

The Prime Minister \_\_\_\_\_ the nation asking for the \_\_\_\_\_ of the traitors.

- Ans
- 1. meant, mean
  - 2. address, addressed
  - 3. mean, meant
  - 4. addressed, address

Question ID : 26433061050  
Status : Answered  
Chosen Option : 4

Q.14 Select the most appropriate homonym to fill in the blank.

I think he is the \_\_\_\_\_ person for this job.

- Ans
- 1. write
  - 2. rite
  - 3. right
  - 4. wright

Question ID : 26433060049  
Status : Answered  
Chosen Option : 3

**Q.15** Select the word segment that substitutes (replaces) the bracketed word segment correctly and completes the sentence meaningfully.

People in temperate (country pay little attention) to mangroves.

- Ans
- 1. country pays little attention
  - 2. countries pays little attention
  - 3. countries pay little attention
  - 4. country paid little attention

Question ID : 26433088960

Status : Answered

Chosen Option : 3

**Comprehension:**

In the following passage, some words have been deleted. Read the passage carefully and select the most appropriate option to fill in each blank.

While stone sculptures and reliefs (1)\_\_\_\_\_ the exterior of great religious monuments for many centuries, bronze sculptures of the gods were probably a later development. In southern India, kings and queens of the Chola dynasty were well- known patrons of great Hindu (2)\_\_\_\_\_. Marvellous bronze sculptures were worshipped in the temple context, and carried through the streets in (3)\_\_\_\_\_ during religious festivals. Such great temple festivals, involving massive carts that transport divine images, still (4)\_\_\_\_\_ today throughout India, and major celebrations may draw hundreds of thousands of participants. Such images were popular during the Chola dynasty because people increasingly wanted a more intimate, emotional relationship with the gods. These ideas were (5)\_\_\_\_\_ to the religious movement known as 'Bhakti', a personal and emotional experience of divinity.

SubQuestion No : 16

**Q.16** Select the most appropriate option to fill in blank number 1.

- Ans
- 1. monitored
  - 2. overshadowed
  - 3. ornamented
  - 4. ruined

Question ID : 26433072736

Status : Answered

Chosen Option : 3

**Comprehension:**

In the following passage, some words have been deleted. Read the passage carefully and select the most appropriate option to fill in each blank.

While stone sculptures and reliefs (1)\_\_\_\_\_ the exterior of great religious monuments for many centuries, bronze sculptures of the gods were probably a later development. In southern India, kings and queens of the Chola dynasty were well- known patrons of great Hindu (2)\_\_\_\_\_. Marvellous bronze sculptures were worshipped in the temple context, and carried through the streets in (3)\_\_\_\_\_ during religious festivals. Such great temple festivals, involving massive carts that transport divine images, still (4)\_\_\_\_\_ today throughout India, and major celebrations may draw hundreds of thousands of participants. Such images were popular during the Chola dynasty because people increasingly wanted a more intimate, emotional relationship with the gods. These ideas were (5)\_\_\_\_\_ to the religious movement known as 'Bhakti', a personal and emotional experience of divinity.

SubQuestion No : 17

**Q.17** Select the most appropriate option to fill in blank number 2.

- Ans
- 1. regulations
  - 2. saints
  - 3. states
  - 4. temples

Question ID : 26433072737

Status : Answered

Chosen Option : 4

**Comprehension:**

In the following passage, some words have been deleted. Read the passage carefully and select the most appropriate option to fill in each blank.

While stone sculptures and reliefs (1)\_\_\_\_\_ the exterior of great religious monuments for many centuries, bronze sculptures of the gods were probably a later development. In southern India, kings and queens of the Chola dynasty were well- known patrons of great Hindu (2)\_\_\_\_\_. Marvellous bronze sculptures were worshipped in the temple context, and carried through the streets in (3)\_\_\_\_\_ during religious festivals. Such great temple festivals, involving massive carts that transport divine images, still (4)\_\_\_\_\_ today throughout India, and major celebrations may draw hundreds of thousands of participants. Such images were popular during the Chola dynasty because people increasingly wanted a more intimate, emotional relationship with the gods. These ideas were (5)\_\_\_\_\_ to the religious movement known as 'Bhakti', a personal and emotional experience of divinity.

**SubQuestion No : 18**

**Q.18** Select the most appropriate option to fill in blank number 3.

- Ans**
- 1. vessels
  - 2. competitions
  - 3. patterns
  - 4. processions

Question ID : 26433072738

Status : Answered

Chosen Option : 4

**Comprehension:**

In the following passage, some words have been deleted. Read the passage carefully and select the most appropriate option to fill in each blank.

While stone sculptures and reliefs (1)\_\_\_\_\_ the exterior of great religious monuments for many centuries, bronze sculptures of the gods were probably a later development. In southern India, kings and queens of the Chola dynasty were well- known patrons of great Hindu (2)\_\_\_\_\_. Marvellous bronze sculptures were worshipped in the temple context, and carried through the streets in (3)\_\_\_\_\_ during religious festivals. Such great temple festivals, involving massive carts that transport divine images, still (4)\_\_\_\_\_ today throughout India, and major celebrations may draw hundreds of thousands of participants. Such images were popular during the Chola dynasty because people increasingly wanted a more intimate, emotional relationship with the gods. These ideas were (5)\_\_\_\_\_ to the religious movement known as 'Bhakti', a personal and emotional experience of divinity.

**SubQuestion No : 19**

**Q.19** Select the most appropriate option to fill in blank number 4.

- Ans**
- 1. occur
  - 2. accede
  - 3. herald
  - 4. inspire

Question ID : 26433072739

Status : Answered

Chosen Option : 1

**Comprehension:**

In the following passage, some words have been deleted. Read the passage carefully and select the most appropriate option to fill in each blank.

While stone sculptures and reliefs (1)\_\_\_\_\_ the exterior of great religious monuments for many centuries, bronze sculptures of the gods were probably a later development. In southern India, kings and queens of the Chola dynasty were well-known patrons of great Hindu (2)\_\_\_\_\_. Marvellous bronze sculptures were worshipped in the temple context, and carried through the streets in (3)\_\_\_\_\_ during religious festivals. Such great temple festivals, involving massive carts that transport divine images, still (4)\_\_\_\_\_ today throughout India, and major celebrations may draw hundreds of thousands of participants. Such images were popular during the Chola dynasty because people increasingly wanted a more intimate, emotional relationship with the gods. These ideas were (5)\_\_\_\_\_ to the religious movement known as 'Bhakti', a personal and emotional experience of divinity.

**SubQuestion No : 20**

**Q.20** Select the most appropriate option to fill in blank number 5.

- Ans**
- 1. analogous
  - 2. foreign
  - 3. contrary
  - 4. central

Question ID : 26433072740  
Status : Answered  
Chosen Option : 1

**Section : Part-D-Hindi**

**Q.1** निम्नलिखित में से कौन सा एक अकर्मक क्रिया का उदाहरण नहीं है?

- Ans**
- 1. सीता खाना बनाती है।
  - 2. सोना चमकता है।
  - 3. हनसा रोती है।
  - 4. अशोक हंसता है।

Question ID : 26433085042  
Status : Not Answered  
Chosen Option : --

**Q.2** निम्नलिखित विकल्पों में से 'ऐसे स्थान का वास जहाँ कोई पता न पा सके' वाक्यांश के लिए एक सार्थक शब्द क्या होगा ?

- Ans**
- 1. निकटवास
  - 2. निवास
  - 3. दूरस्थ
  - 4. अज्ञातवास

Question ID : 26433062533  
Status : Not Answered  
Chosen Option : --

**Q.3** निम्नलिखित विकल्पों में से किस एक वाक्य में विशेषण का उचित प्रयोग किया गया है?

- Ans**
- 1. मोहन गाँव में रहता है।
  - 2. रमेश घर में है।
  - 3. उसका घोड़ा सुन्दर है।
  - 4. सोहन प्रयागराज में है।

Question ID : 26433062963  
Status : Not Answered  
Chosen Option : --

Q.4 'उपकरण' के एकार्थी शब्द चयन कर निम्न वाक्य वाक्य में रिक्त स्थान की पूर्ति कीजिए।  
आप सारे \_\_\_\_\_ को एकत्रित कीजिए।

- Ans
- 1. वस्तुओं
  - 2. उपादानों
  - 3. साधनाओं
  - 4. उदाहरणों

Question ID : 26433063082  
Status : Not Answered  
Chosen Option : --

Q.5 निम्नलिखित विकल्पों में से 'कान भरना' मुहावरे का अर्थ क्या है?

- Ans
- 1. बुराई करना
  - 2. सम्मान करना
  - 3. भलाई करना
  - 4. निरादर करना

Question ID : 26433062550  
Status : Not Answered  
Chosen Option : --

Q.6 निम्नलिखित विकल्पों में से 'जिसका एक-एक शब्द मिलता हो' वाक्यांश के लिए एक सार्थक शब्द कौन सा है?

- Ans
- 1. समदर्शी
  - 2. अथाह
  - 3. शब्दशः
  - 4. सहगान

Question ID : 264330109528  
Status : Not Answered  
Chosen Option : --

Q.7 'जंगल का राजा शेर होता है।' वाक्य में प्रयुक्त 'जंगल' शब्द का पर्यायवाची शब्द नहीं है-

- Ans
- 1. अयस
  - 2. विपिन
  - 3. कानन
  - 4. कांतार

Question ID : 26433069740  
Status : Not Answered  
Chosen Option : --

Q.8 निम्नलिखित वाक्य में रेखांकित शब्द का, विकल्पों में दिए गये शब्दों में से कौन-सा शब्द पर्यायवाची नहीं है?  
मेरे जीवन का यही एकमात्र 'लक्ष्य' है।

- Ans
- 1. भवन
  - 2. उद्देश
  - 3. मंजिल
  - 4. निशाना

Question ID : 26433085069  
Status : Not Answered  
Chosen Option : --

Q.9 एक दिन के उपवास के बाद मोहन के पेट में \_\_\_\_\_ कूदने लगे।  
उपरोक्त वाक्य में रिक्त स्थान की पूर्ति उचित शब्द द्वारा कीजिए।

- Ans
- 1. मेढ़क
  - 2. चूहे
  - 3. कुत्ते
  - 4. बिल्ली

Question ID : 26433062617  
Status : Not Answered  
Chosen Option : --

Q.10 निम्नलिखित में से शुद्ध वाक्य है-

- Ans
- 1. कई खिलाड़ी वहां जम हो गए।
  - 2. कई खिड़की वहां जमा हो गए।
  - 3. कई खिलाड़ी वहां जमा हो गए।
  - 4. कई खिलाड़ी वह जमा हो गए।

Question ID : 26433066841  
Status : Not Answered  
Chosen Option : --

Q.11 नीचे दिए गए वाक्य के शुद्ध रूप का चयन विकल्पों में से कीजिए।  
वह चारपाई पर बिछोना बिछा दिया।

- Ans
- 1. वह चारपाई में बिछोना बिछा दी।
  - 2. उसने चारपाई पर बिछौना बिछा दिया।
  - 3. उसने चारपाई में बिछोना बिछाए।
  - 4. वह चारपाई में बिछोना बिछा दिया।

Question ID : 26433063071  
Status : Not Answered  
Chosen Option : --

Q.12 राजपथ से झाकियाँ वापस लौट गयीं।  
इस गलत वाक्य के बदले सही वाक्य का चयन कीजिए।

- Ans
- 1. राजपथ से झाकियाँ लौट गयीं।
  - 2. राजपथ से झाकियाँ सारी फूट पड़ी।
  - 3. राजपथ से एक झाकियाँ निकल पड़ी।
  - 4. राजपथ से झाकियाँ वापस लौट गईं।

Question ID : 26433062695  
Status : Not Answered  
Chosen Option : --

Q.13 निम्नलिखित वाक्य में रेखांकित खंड के स्थान पर प्रयुक्त होने वाले सबसे उपयुक्त विकल्प का चयन कीजिए।  
आपकी घड़ी में कितनी बजे हैं?

- Ans
- 1. कितने
  - 2. किते
  - 3. कब
  - 4. कैसे

Question ID : 26433079573  
Status : Not Answered  
Chosen Option : --

Q.14 'आदि से अंत तक' वाक्यांश के लिए एक शब्द क्या होगा?

- Ans  1. अभ्याख्यान  
 2. आपादमस्तक  
 3. प्रारम्भिक  
 4. आद्योपान्त

Question ID : 26433070050  
Status : Not Answered  
Chosen Option : --

Q.15 निम्नलिखित वाक्य में रेखांकित शब्द के विलोम शब्द का प्रयोग करके रिक्त स्थान की पूर्ति कीजिए।  
ऊपर से सोने का स्वभाव स्थिर है जबकि वास्तव में वह \_\_\_\_\_ है।

- Ans  1. अचल  
 2. जागरण  
 3. सूक्ष्म  
 4. चंचल

Question ID : 26433091347  
Status : Not Answered  
Chosen Option : --

**Comprehension:**

निम्नलिखित गद्यांश में कुछ शब्दों को हटा दिया गया है। दिए गए विकल्पों की सहायता से रिक्त स्थानों की पूर्ति कीजिए। प्रत्येक संख्या के लिए सबसे उपयुक्त विकल्प का चयन कीजिए।  
बुद्धिजीवी से तात्पर्य उन व्यक्तियों से है जो 1. \_\_\_\_\_ का अधिक उपयोग करके जीवन चलाते हैं अर्थात् 2. \_\_\_\_\_ अर्जित करते हैं। समाज में मुख्यतः दो प्रकार के व्यक्ति हैं- एक वे जो अपने जीवन में 3. \_\_\_\_\_ श्रम अधिक करते हैं और दूसरे वे जो शारीरिक श्रम की अपेक्षा 4. \_\_\_\_\_ बल से काम करते हैं। समाज के लिए दोनों की 5. \_\_\_\_\_ भूमिका है।

SubQuestion No : 16

Q.16 रिक्त स्थान 1 की पूर्ति के लिए सबसे उपयुक्त विकल्प का चयन कीजिए।

- Ans  1. बल  
 2. बुद्धि  
 3. दिखावे  
 4. दृष्टि

Question ID : 264330111017  
Status : Not Answered  
Chosen Option : --

**Comprehension:**

निम्नलिखित गद्यांश में कुछ शब्दों को हटा दिया गया है। दिए गए विकल्पों की सहायता से रिक्त स्थानों की पूर्ति कीजिए। प्रत्येक संख्या के लिए सबसे उपयुक्त विकल्प का चयन कीजिए।  
बुद्धिजीवी से तात्पर्य उन व्यक्तियों से है जो 1. \_\_\_\_\_ का अधिक उपयोग करके जीवन चलाते हैं अर्थात् 2. \_\_\_\_\_ अर्जित करते हैं। समाज में मुख्यतः दो प्रकार के व्यक्ति हैं- एक वे जो अपने जीवन में 3. \_\_\_\_\_ श्रम अधिक करते हैं और दूसरे वे जो शारीरिक श्रम की अपेक्षा 4. \_\_\_\_\_ बल से काम करते हैं। समाज के लिए दोनों की 5. \_\_\_\_\_ भूमिका है।

SubQuestion No : 17

Q.17 रिक्त स्थान 2 की पूर्ति के लिए सबसे उपयुक्त विकल्प का चयन कीजिए।

- Ans  1. श्रम  
 2. जीविका  
 3. भूमिका  
 4. परिवर्तन

Question ID : 264330111018  
Status : Not Answered  
Chosen Option : --

**Comprehension:**

निम्नलिखित गद्यांश में कुछ शब्दों को हटा दिया गया है। दिए गए विकल्पों की सहायता से रिक्त स्थानों की पूर्ति कीजिए। प्रत्येक संख्या के लिए सबसे उपयुक्त विकल्प का चयन कीजिए।  
बुद्धिजीवी से तात्पर्य उन व्यक्तियों से है जो 1. \_\_\_\_\_ का अधिक उपयोग करके जीवन चलाते हैं अर्थात् 2. \_\_\_\_\_ अर्जित करते हैं। समाज में मुख्यतः दो प्रकार के व्यक्ति हैं- एक वे जो अपने जीवन में 3. \_\_\_\_\_ श्रम अधिक करते हैं और दूसरे वे जो शारीरिक श्रम की अपेक्षा 4. \_\_\_\_\_ बल से काम करते हैं। समाज के लिए दोनों की 5. \_\_\_\_\_ भूमिका है।

**SubQuestion No : 18****Q.18 रिक्त स्थान 3 की पूर्ति के लिए सबसे उपयुक्त विकल्प का चयन कीजिए।**

- Ans  1. शारीरिक  
 2. दिखावा  
 3. मज़दूरी  
 4. प्राचीन

Question ID : 264330111019  
Status : Not Answered  
Chosen Option : --

**Comprehension:**

निम्नलिखित गद्यांश में कुछ शब्दों को हटा दिया गया है। दिए गए विकल्पों की सहायता से रिक्त स्थानों की पूर्ति कीजिए। प्रत्येक संख्या के लिए सबसे उपयुक्त विकल्प का चयन कीजिए।  
बुद्धिजीवी से तात्पर्य उन व्यक्तियों से है जो 1. \_\_\_\_\_ का अधिक उपयोग करके जीवन चलाते हैं अर्थात् 2. \_\_\_\_\_ अर्जित करते हैं। समाज में मुख्यतः दो प्रकार के व्यक्ति हैं- एक वे जो अपने जीवन में 3. \_\_\_\_\_ श्रम अधिक करते हैं और दूसरे वे जो शारीरिक श्रम की अपेक्षा 4. \_\_\_\_\_ बल से काम करते हैं। समाज के लिए दोनों की 5. \_\_\_\_\_ भूमिका है।

**SubQuestion No : 19****Q.19 रिक्त स्थान 4 की पूर्ति के लिए सबसे उपयुक्त विकल्प का चयन कीजिए।**

- Ans  1. बड़े  
 2. बुद्धि  
 3. बाहु  
 4. शस्त्र

Question ID : 264330111020  
Status : Not Answered  
Chosen Option : --

**Comprehension:**

निम्नलिखित गद्यांश में कुछ शब्दों को हटा दिया गया है। दिए गए विकल्पों की सहायता से रिक्त स्थानों की पूर्ति कीजिए। प्रत्येक संख्या के लिए सबसे उपयुक्त विकल्प का चयन कीजिए।  
बुद्धिजीवी से तात्पर्य उन व्यक्तियों से है जो 1. \_\_\_\_\_ का अधिक उपयोग करके जीवन चलाते हैं अर्थात् 2. \_\_\_\_\_ अर्जित करते हैं। समाज में मुख्यतः दो प्रकार के व्यक्ति हैं- एक वे जो अपने जीवन में 3. \_\_\_\_\_ श्रम अधिक करते हैं और दूसरे वे जो शारीरिक श्रम की अपेक्षा 4. \_\_\_\_\_ बल से काम करते हैं। समाज के लिए दोनों की 5. \_\_\_\_\_ भूमिका है।

**SubQuestion No : 20****Q.20 रिक्त स्थान 5 की पूर्ति के लिए सबसे उपयुक्त विकल्प का चयन कीजिए।**

- Ans  1. चिंतित  
 2. विवश  
 3. अनिवार्य  
 4. कम

Question ID : 264330111021  
Status : Not Answered  
Chosen Option : --

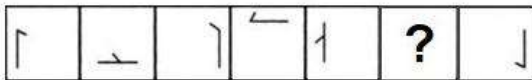


# Constable GD in CAPFs SSF Rifleman GD in Assam Rifles and Sepoy in NCB Examination 2022

Roll Number	KD Job Updates
Candidate Name	KD Job Updates
Venue Name	iON Digital Zone iDZ 2 Sector 62
Exam Date	17/01/2023
Exam Time	9:00 AM - 10:00 AM
Subject	Constable GD Examination 2022

Section : Part-A-General Intelligence and Reasoning

Q.1 Select the figure from among the given options that can replace the question mark (?) in the following series.



Ans

- 1.
- 2.
- 3.
- 4.

Question ID : 26433080498

Status : Answered

Chosen Option : 2

Q.2 Select the option that is related to the third word in the same way as the second word is related to the first word. (The words must be considered as meaningful English words and must not be related to each other based on the number of letters/number of consonants/vowels in the word)  
2D : Triangle :: 3D : \_\_\_\_\_

- 1. Square
- 2. Rectangle
- 3. Figure
- 4. Hemisphere

Question ID : 26433082658

Status : Answered

Chosen Option : 4

**Q.3** Which two signs should be interchanged to make the below equation mathematically correct?

$$63 \div 3 \times 21 - 15 + 12 = 6$$

- Ans
- 1. - and +
  - 2. ÷ and ×
  - 3. × and -
  - 4. ÷ and -

Question ID : 264330117547  
Status : Answered  
Chosen Option : 2

**Q.4** Six people M, N, O, P, Q and R are sitting in a straight row, facing north. O is sitting to the immediate right of N. P is sitting to the immediate right of O. Q is sitting to the immediate right of P. R is sitting to the immediate left of N. If there are only five people sitting to the right of M, who is at the extreme right end of the row?

- Ans
- 1. Q
  - 2. R
  - 3. P
  - 4. N

Question ID : 26433069154  
Status : Answered  
Chosen Option : 1

**Q.5** Three statements are given followed by two conclusions numbered 1 and 2. Assuming the statements to be true, even if they seem to be at variance with commonly known facts, decide which of the conclusions logically follow(s) from the statements.

Statements:

No red is black.

All blues are black.

No blue is pink.

Conclusions:

1. No blue is red.

2. No red is pink.

- Ans
- 1. Neither conclusion 1 nor 2 follows
  - 2. Both conclusions 1 and 2 follow
  - 3. Only conclusion 1 follows
  - 4. Only conclusion 2 follows

Question ID : 26433087133  
Status : Answered  
Chosen Option : 3

**Q.6** Select the option that is related to the third word in the same way as the second word is related to the first word. (The words must be considered as meaningful English words and must not be related to each other based on the number of letters/number of consonants/vowels in the word.)

Gardener : Harrow :: Farmer : ?

- Ans
- 1. Plough
  - 2. Water
  - 3. Seed
  - 4. Land

Question ID : 26433067366

Status : Answered

Chosen Option : 1

**Q.7** 'A + B' means 'A is the brother of B'  
'A - B' means 'A is the mother of B'  
'A × B' means 'A is the husband of B'  
'A ÷ B' means 'A is the sister of B'

If  $B \times D \div F - H + J \div S$ , then which of the following statements is NOT correct?

- Ans
- 1. H is the son of D.
  - 2. J is the sister of H.
  - 3. F is the sister of D.
  - 4. B is the husband of the sister of F.

Question ID : 26433082636

Status : Answered

Chosen Option : 1

**Q.8** Which letter-cluster will replace the question mark (?) to complete the given series?  
XERJ, THPK, ?, LNLM, HQJN

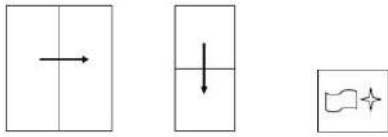
- Ans
- 1. RKNM
  - 2. PKNL
  - 3. SLKM
  - 4. QKLN

Question ID : 26433068578

Status : Answered

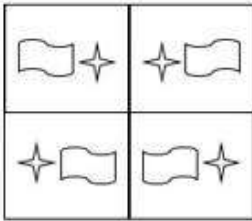
Chosen Option : 2

**Q.9** A paper is folded and cut as shown below. How will it appear when unfolded?

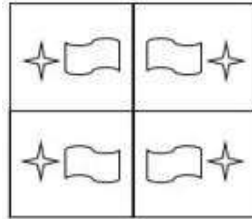


**Ans**

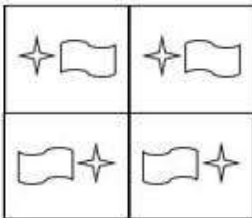
1.



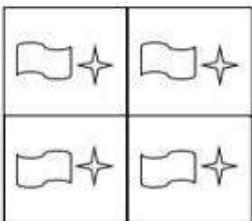
2.



3.



4.



Question ID : 26433089783

Status : Answered

Chosen Option : 2

**Q.10** Which of the following interchange of numbers(not digits) would make the given equation correct?

$$15 \div 5 \times 12 + 6 = 65 - 35$$

**Ans**  1. 5, 15

2. 6, 12

3. 5, 35

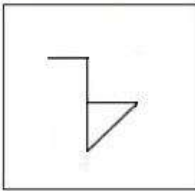
4. 12, 65

Question ID : 26433087049

Status : Answered

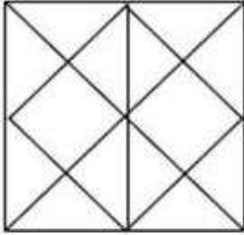
Chosen Option : 2

Q.11 Select the option in which the given figure is embedded (rotation is NOT allowed).

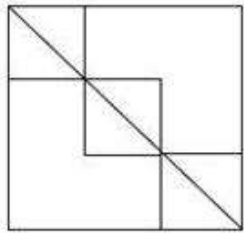


Ans

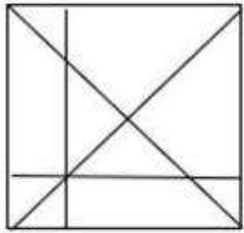
✗ 1.



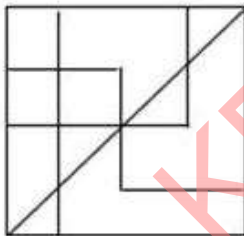
✗ 2.



✗ 3.



✓ 4.



Question ID : 26433076717

Status : Answered

Chosen Option : 4

Q.12 In a code language, 'fast track him' is coded as 'le pa da', 'we give fast' is coded as 'da jo he', 'track my order' is coded as 'vu ba le'. What is the code for the word 'him'?

Ans ✓ 1. pa

✗ 2. jo

✗ 3. de

✗ 4. le

Question ID : 26433086984

Status : Answered

Chosen Option : 1

Q.13 Select the correct mirror image of the given figure when the mirror is placed at MN as shown below.

tOgeTHer

M

N

Ans

✗ 1. RəHTəgət

✓ 2. ɹəHTəgət

✗ 3. ɹəHTəgət

✗ 4. RəHTəgət

Question ID : 26433085557

Status : Answered

Chosen Option : 2

Q.14 Select the option that is related to the fifth number in the same way as the second number is related to the first number and the fourth number is related to the third number.

1 : 36 :: 2 : 49 :: 4 : ?

Ans ✗ 1. 82

✓ 2. 81

✗ 3. 90

✗ 4. 93

Question ID : 26433069413

Status : Answered

Chosen Option : 2

Q.15 Which of the following numbers will replace the question mark (?) in the given series?  
98, 93, 89, ?, 84

Ans ✗ 1. 90

✗ 2. 87

✓ 3. 86

✗ 4. 85

Question ID : 26433085349

Status : Answered

Chosen Option : 3

Q.16 Which option represents the correct order of the given words as they would appear in the English dictionary?

1. track
2. trace
3. trade
4. treasure
5. triangle

- Ans  1. 3,2,1,4,5
2. 2,1,3,4,5
3. 2,3,1,5,4
4. 3,4,1,2,5

Question ID : 26433069321

Status : Answered

Chosen Option : 2

Q.17 Kirti, Suman, Shubh, Kanak, Pari, Charu, Shlok and Shivi are sitting around a square table facing the centre of the table. Some of them are sitting at the corners, while some are sitting at the exact centre of the sides. Kirti sits third to the left of Shubh. Kirti sits at one of the corners. Kanak sits second to the right of Pari. Pari does not sit at any of the corners. Pari is not an immediate neighbour of Kirti. Suman is an immediate neighbour of Charu. Suman does not sit at any of the middle of the sides. Only three people sit between Suman and Shlok from either sides. Who does NOT sit at any of the corners?

- Ans  1. Charu
2. Kirti
3. Shlok
4. Shivi

Question ID : 26433082289

Status : Answered

Chosen Option : 1

Q.18 Which of the following numbers will replace the question mark (?) in the given series?  
5, 7, 12, 21, 35, 55, ?

- Ans  1. 69
2. 72
3. 82
4. 65

Question ID : 26433082006

Status : Answered

Chosen Option : 3

Q.19 Which of the following letter-clusters will replace the question mark (?) in the given series?

BVfy, FRJU, JNNQ, ?, RFVI

- Ans  1. NJRM
2. NKRN
3. MJQM
4. NJQM

Question ID : 26433076451

Status : Answered

Chosen Option : 1

Q.20 In a certain code language, 'CLOAKED' is written as '39' and 'FLANK' is written as '32'. How will 'FLOCKED' be written in that language?

- Ans
- 1. 42
  - 2. 46
  - 3. 44
  - 4. 48

Question ID : 26433069473  
Status : Answered  
Chosen Option : 3

Section : Part-B-General Knowledge and General awareness

Q.1 The Mahatma Gandhi National Rural Employment Guarantee Act, (MGNREGA) Government of India, comes under the flagship of \_\_\_\_\_.

- Ans
- 1. Ministry of Social Justice and Empowerment
  - 2. Ministry of Health and Family Welfare
  - 3. Ministry of Housing and Urban Affairs
  - 4. Ministry of Rural Development

Question ID : 264330116219  
Status : Answered  
Chosen Option : 1

Q.2 Which article of the Indian Constitution provides for right to education?

- Ans
- 1. 23
  - 2. 22
  - 3. 21A
  - 4. 20

Question ID : 264330115635  
Status : Answered  
Chosen Option : 3

Q.3 Which dynasty ruled over Delhi during 1290 to 1320?

- Ans
- 1. Tughluq
  - 2. Khalji
  - 3. Lodi
  - 4. Sayyid

Question ID : 26433085224  
Status : Answered  
Chosen Option : 2



**Q.4 Sangeet Natak Akademi Fellow ( Akademi Ratna) has been awarded to**

- Ans**  1. Jatin Goswami  
 2. Anita Sharma  
 3. Manik Barbayan  
 4. Tankeswar Hazarika Borbayan

Question ID : 264330115873  
Status : Answered  
Chosen Option : 4

**Q.5 Which among the following is an "S" shaped ocean?**

- Ans**  1. Indian Ocean  
 2. Arctic Ocean  
 3. Pacific Ocean  
 4. Atlantic Ocean

Question ID : 264330116005  
Status : Answered  
Chosen Option : 4

**Q.6 The Sport Jallikattu belongs to which Country?**

- Ans**  1. Nepal  
 2. Spain  
 3. Rome  
 4. India

Question ID : 264330116287  
Status : Answered  
Chosen Option : 4

**Q.7 What is the minimum age required to be appointed as the Governor of State?**

- Ans**  1. 35 years  
 2. 25 years  
 3. 30 years  
 4. 27 years

Question ID : 26433074912  
Status : Answered  
Chosen Option : 1

Q.8 The Green Revolution in India was initiated in the 1960s by introducing high-yielding varieties of \_\_\_\_\_.

- Ans
- 1. jowar and maize
  - 2. rice and wheat
  - 3. millet and jute
  - 4. jute and cotton

Question ID : 264330116153  
Status : Answered  
Chosen Option : 2

Q.9 Which Union Minister of India inaugurated largest South Asian film market-Film Bazaar in November 2022?

- Ans
- 1. Smriti Irani
  - 2. Nirmala Sitharaman
  - 3. Anurag Singh Thakur
  - 4. Gajendra Singh Shekhawat

Question ID : 264330114952  
Status : Answered  
Chosen Option : 3

Q.10 गणेश चतुर्थी हिंदू पंचांग के निम्नलिखित में से किस माह के चौथे दिन से शुरू होती है?

- Ans
- 1. कार्तिक
  - 2. माघ
  - 3. भाद्रपद
  - 4. अश्विन

Question ID : 26433094887  
Status : Answered  
Chosen Option : 3

Q.11 How is the distribution of species done in stratification?

- Ans
- 1. centrally
  - 2. diagonally
  - 3. vertically
  - 4. horizontally

Question ID : 264330115249  
Status : Answered  
Chosen Option : 3

Q.12 Koli is the folk dance of which of the following Indian states?

- Ans  1. Maharashtra  
 2. Jharkhand  
 3. West Bengal  
 4. Tamil Nadu

Question ID : 26433086712  
Status : Answered  
Chosen Option : 2

Q.13 Who introduced the concept of poverty line in pre-independent India?

- Ans  1. Manabendra Nath Roy  
 2. Amartya Sen  
 3. Dadabhai Naoroji  
 4. Mysore Narasimhachar Srinivas

Question ID : 264330116073  
Status : Answered  
Chosen Option : 3

Q.14 Which of the following element has atomic number 12?

- Ans  1. Ca  
 2. O  
 3. He  
 4. Mg

Question ID : 264330115171  
Status : Answered  
Chosen Option : 1

Q.15 What is the last step in the process of manufacturing of steel?

- Ans  1. production of liquid steel  
 2. heating limestone, coke and iron in a blast furnace  
 3. shaping of steel  
 4. production of pig iron

Question ID : 264330115581  
Status : Answered  
Chosen Option : 2

Q.16 Who became the foreign secretary of India in May 2022?

- Ans  1. Vinay Mohan Kwatra  
 2. Subrahmanyam Jaishankar  
 3. Yashwant Sinha  
 4. Harsh Vardhan Shringla

Question ID : 264330115037  
Status : Answered  
Chosen Option : 1

Q.17 How many players on each side are allowed on the field at a time in the game of Volleyball?

- Ans  1. 6  
 2. 8  
 3. 7  
 4. 5

Question ID : 264330115932  
Status : Answered  
Chosen Option : 1

Q.18 Bahadur Shah Zafar and his sons were arrested by the British officials from \_\_\_\_\_ in Delhi.

- Ans  1. Humayun's Tomb  
 2. Safdarjung's Tomb  
 3. Jama Masjid  
 4. Red Fort

Question ID : 26433089894  
Status : Answered  
Chosen Option : 4

Q.19 Father of Green Revolution in the world is :

- Ans  1. Norman Borlaug  
 2. Adam Smith  
 3. Jawahar Lal Nehru  
 4. Kourien

Question ID : 264330115414  
Status : Answered  
Chosen Option : 1

Q.20 National income accounting is a bookkeeping system to measure the level of the country's \_\_\_\_\_ activity in a given time period.

- Ans  1. economic  
 2. chemical  
 3. democratic  
 4. medical

Question ID : 264330115334  
Status : Answered  
Chosen Option : 1

Q.1 A man's weekly wage was Rs. 1200, but now he earns Rs. 1800. What is the percent increase in the man's wage?

- Ans
- 1. 20 percent
  - 2. 80 percent
  - 3. 50 percent
  - 4. 30 percent

Question ID : 264330116823  
Status : Answered  
Chosen Option : 3

Q.2 Three cubes, each of side 5 cm, are joined end to end. What is the total surface area of the resulting cuboid?

- Ans
- 1.  $325 \text{ cm}^2$
  - 2.  $375 \text{ cm}^2$
  - 3.  $350 \text{ cm}^2$
  - 4.  $380 \text{ cm}^2$

Question ID : 26433066368  
Status : Answered  
Chosen Option : 3

Q.3 Akhil, Sahil and Amit can do a certain work in 64 days. While Akhil and Sahil can do the same work in 80 days, then in how many days can Amit do the same work?

- Ans
- 1. 330 days
  - 2. 320 days
  - 3. 340 days
  - 4. 380 days

Question ID : 264330116903  
Status : Answered  
Chosen Option : 2

Q.4 Which of the following is NOT correct?

- Ans
- 1.  $13 - 7 + 8 \times 9 + 63 \div 9 = 88$
  - 2.  $8 \times 3 + 63 \div 9 - 6 = 25$
  - 3.  $42 \div 6 + (2 \times 5) \times 1 + 9 = 26$
  - 4.  $9 \times 4 + (12 + 2) - 30 \div 3 = 40$

Question ID : 26433076091  
Status : Answered  
Chosen Option : 1

**Q.5** Mohan and Sohan started running from the points P and Q at the same time towards each other. The speeds of Mohan and Sohan are 24km/h and 18km/h respectively. If they meet after 10 min, then what is the distance between P and Q?

- Ans
- 1. 9 km
  - 2. 10 km
  - 3. 8 km
  - 4. 7 km

Question ID : 26433075698  
Status : Answered  
Chosen Option : 4

**Q.6** Three solid cubes of sides 8 cm, 1 cm, and 6 cm, respectively, are melted to form a new cube. Find the longest diagonal of the new cube.

- Ans
- 1.  $9\sqrt{3}$ cm
  - 2.  $9\sqrt{2}$ cm
  - 3.  $7\sqrt{3}$ cm
  - 4.  $7\sqrt{2}$ cm

Question ID : 26433083063  
Status : Answered  
Chosen Option : 1

**Q.7** Samantha takes 3 hours to travel from place X to place Y at a speed of 75 miles per hour. She takes 2 hours to travel from place Y to Z with 30% increased speed. Find her average speed during the entire journey.

- Ans
- 1. 84 miles per hour
  - 2. 65 miles per hour
  - 3. 72 miles per hour
  - 4. 90 miles per hour

Question ID : 26433081551  
Status : Answered  
Chosen Option : 1

**Q.8** If a : b is 4 : 6 and b : c is 10 : 11, then c : a is :

- Ans
- 1. 33 : 21
  - 2. 21 : 33
  - 3. 33 : 20
  - 4. 20 : 33

Question ID : 26433076305  
Status : Answered  
Chosen Option : 3

Q.9 The present population of a city is 92,61,000. If it has been increasing at the rate of 5% per annum, find its population 3 years ago.

- Ans
- 1. 60,00,000
  - 2. 80,00,000
  - 3. 40,00,000
  - 4. 20,00,000

Question ID : 26433073131  
Status : Answered  
Chosen Option : 2

Q.10 A retailer announces a discount of 40% for selling a food processor marked at ₹86,000. The cost price of the food processor is 60% below the marked price. He offers a further discount of 10% if the buyer presents his membership card of the retailer's store. The profit of the retailer with the membership card scheme is what percentage of the profit of the retailer without the membership card scheme?

- Ans
- 1. 70%
  - 2. 67%
  - 3. 82%
  - 4. 73%

Question ID : 26433061892  
Status : Answered  
Chosen Option : 1

Q.11 The ratio of money with Jack and John is 7 : 13, and that with John and Jonas is 9 : 11. If Jack has ₹6,300, then how much money does Jonas have?

- Ans
- 1. ₹14,100
  - 2. ₹14,500
  - 3. ₹14,200
  - 4. ₹14,300

Question ID : 26433080175  
Status : Answered  
Chosen Option : 4

Q.12 After a certain time period, a sum of Rs.24,000 invested in a bank will amount to Rs.26,460 when the compound rate of interest is 5% p.a., being compounded annually. In how many months will it amount to Rs.26,460?

- Ans
- 1. 12
  - 2. 30
  - 3. 24
  - 4. 36

Question ID : 26433075073  
Status : Answered  
Chosen Option : 3

Q.13 The HCF of two numbers is 24 and their LCM is 2400. If one of the numbers is 180, then the other number is:

- Ans
- 1. 334
  - 2. 320
  - 3. 336
  - 4. 338

Question ID : 26433082351  
Status : Answered  
Chosen Option : 2

Q.14 An article marked at ₹2,000 is sold with two successive discounts of 20% and 10%. Find the selling price.

- Ans
- 1. ₹1,640
  - 2. ₹1,540
  - 3. ₹1,240
  - 4. ₹1,440

Question ID : 26433082613  
Status : Answered  
Chosen Option : 4

Q.15 Two trains, starting at the same time from two stations 100 km apart are travelling towards each other and they cross each other at a distance of 70 km from one of the stations. What is the ratio of their speeds?

- Ans
- 1. 3 : 4
  - 2. 4 : 5
  - 3. 7 : 3
  - 4. 5 : 7

Question ID : 26433073037  
Status : Answered  
Chosen Option : 3

Q.16 A dealer buys 50 chairs for ₹50,000 but 20 of them are damaged. He decides to sell each of the damaged chair at 3/4th of the selling price of normal chair. What should be the selling price of normal chair so that he may make a profit of 35% on the whole transaction?

- Ans
- 1. ₹1,125
  - 2. ₹5,000
  - 3. ₹6,750
  - 4. ₹1,500

Question ID : 26433075879  
Status : Answered  
Chosen Option : 4



Q.17 The population of a village reduced from 15,750 to 14,490 because of the outbreak of the Covid-19 pandemic. What is the percentage decrease in the population of that village?

- Ans
- 1. 9%
  - 2. 8%
  - 3. 7%
  - 4. 6%

Question ID : 26433080291  
Status : Answered  
Chosen Option : 2

Q.18 A dealer professes to sell his goods at cost price. If by using false weights he gains  $5\frac{5}{19}\%$ , then find the error in weight of 1 kg.

- Ans
- 1. 50 g
  - 2. 55 g
  - 3. 45 g
  - 4. 60 g

Question ID : 26433081567  
Status : Answered  
Chosen Option : 1

Q.19 A is twice as efficient as B and takes 45 days less than B to complete a job. Find the number of days in which they can finish the job together.

- Ans
- 1. 32
  - 2. 36
  - 3. 30
  - 4. 38

Question ID : 26433075396  
Status : Answered  
Chosen Option : 3

Q.20 Anand covers a distance of 20 km at the speed of 4 km/h and he covers remaining distance at the speed of 5 km/h in 5 hours. What is the average speed (in km/h) of Anand for the whole journey?

- Ans
- 1. 4.5
  - 2. 5
  - 3. 4
  - 4. 4.7

Question ID : 26433082501  
Status : Answered  
Chosen Option : 1

Q.1 Select the most appropriate meaning of the given idiom.

Raining cats and dogs

- Ans  1. A very heavy downpour  
 2. To escape from the situation  
 3. Cats and dogs getting wet in rain  
 4. At the exact time

Question ID : 26433073709  
Status : Answered  
Chosen Option : 1

Q.2 Select the most appropriate synonym of the given word.

Anger

- Ans  1. Delight  
 2. Fury  
 3. Frenzy  
 4. Dismay

Question ID : 26433086370  
Status : Answered  
Chosen Option : 2

Q.3 Identify the correctly spelt sentence.

- Ans  1. My favourite subject is Mathimatics.  
 2. My favourite subject is Mathematecs.  
 3. My favourite subject is Matematiks.  
 4. My favourite subject is Mathematics.

Question ID : 26433072835  
Status : Answered  
Chosen Option : 4

Q.4 Select the most appropriate option to substitute the underlined segment in the given sentence.

Dowry completely violates women's rights and denies them similar opportunities in society.

- Ans  1. an equal standing  
 2. an appropriate desire  
 3. an increasing honour  
 4. an accurate place

Question ID : 26433089833  
Status : Answered  
Chosen Option : 3

**Q.5** Select the most appropriate synonym of the word given below to fill in the blank in the following sentence.

**Imminent**

The king was changing his hiding place every now and then because of \_\_\_\_\_ danger to his life.

- Ans
- 1. happening
  - 2. approaching
  - 3. participating
  - 4. losing

Question ID : 26433084778  
Status : Answered  
Chosen Option : 2

**Q.6** The sentence given below has one misspelt word. Spot the INCORRECTLY spelt word and select its correct spelling.

She comes from an illustrios political family.

- Ans
- 1. Illustrious
  - 2. Illustreous
  - 3. Illustreous
  - 4. Illustrious

Question ID : 26433073552  
Status : Answered  
Chosen Option : 3

**Q.7** Select the most appropriate ANTONYM of the given word.

**Austere**

- Ans
- 1. Affordable
  - 2. Stiff
  - 3. Gruff
  - 4. Genial

Question ID : 26433088323  
Status : Answered  
Chosen Option : 4

**Q.8** Select the most appropriate synonym of the underlined word in the given sentence.

It is of paramount importance that you read the instructions before attempting the test.

- Ans
- 1. Remind
  - 2. Rephrase
  - 3. Rehearse
  - 4. Central

Question ID : 26433087920  
Status : Answered  
Chosen Option : 4

**Q.9** Select the most appropriate **ANTONYM** of the given word.  
**Scintillating**

- Ans**  1. Dark  
 2. Wonderful  
 3. Bright  
 4. Amazing

Question ID : 26433086490  
Status : Answered  
Chosen Option : 1

**Q.10** Select the most appropriate meaning of the given idiom.

**Level playing field**

- Ans**  1. Avoiding differences  
 2. Lack of intelligence  
 3. Forgetting conflicts  
 4. A fair competition

Question ID : 26433073719  
Status : Answered  
Chosen Option : 4

**Q.11** Select the most appropriate option to fill in the blank.

Anne's eye \_\_\_\_\_ is very good for someone of her age.

- Ans**  1. sight  
 2. cite  
 3. side  
 4. site

Question ID : 26433090395  
Status : Answered  
Chosen Option : 4

**Q.12** Choose the sentence that is in simple past tense.

- A. My uncle broke his promise to keep up with the trend of being healthy.  
B. My uncle had been breaking his promise to keep up with the trend of being healthy.  
C. My uncle had broken his promise to keep up with the trend of being healthy.  
D. My uncle was breaking his promise to keep up with the trend of being healthy.

- Ans**  1. B  
 2. D  
 3. A  
 4. C

Question ID : 26433096222  
Status : Answered  
Chosen Option : 3

Q.13 Select the most appropriate option to fill in the blank.

You might be wrong, you can't always be \_\_\_\_\_.

- Ans
- 1. rite
  - 2. right
  - 3. write
  - 4. riot

Question ID : 26433084615  
Status : Answered  
Chosen Option : 2

Q.14 Select the most appropriate option to substitute the underlined segment in the given sentence.

The lizard moves from one whole to another and eats insects hidden in the hole.

- Ans
- 1. moves from one whole to another and eat
  - 2. moves from one to another and eats
  - 3. moves from one hole to another and eats
  - 4. moves from one hole to another but eats

Question ID : 264330100292  
Status : Answered  
Chosen Option : 3

Q.15 Select the option that can be used as a one-word substitute for the given group of words.

A perfect society in which people work well with each other and are happy

- Ans
- 1. Gala land
  - 2. Dystopia
  - 3. Homeland
  - 4. Utopia

Question ID : 26433089377  
Status : Answered  
Chosen Option : 4

**Comprehension:**

In the following passage, some words have been deleted. Read the passage carefully and select the most appropriate option to fill in each blank.

Cancer is a disease in which some of the body's cells grow (1)\_\_\_\_\_ and spread to other parts of the body. Cancer can start (2)\_\_\_\_\_ anywhere in the human body, which is made up of trillions of cells. Normally, human cells grow and multiply (through a process called cell division) to (3)\_\_\_\_\_ new cells as the body needs them. When cells grow old or become damaged, they die, and new cells take their place. Sometimes, this orderly process (4)\_\_\_\_\_ down, and abnormal or damaged cells grow and multiply when they shouldn't. These cells may form tumours, which are lumps of tissue. Tumours can be cancerous or (5)\_\_\_\_\_.

**SubQuestion No : 16**

**Q.16** Select the most appropriate option to fill in blank 1.

- Ans**  1. uncontrollably  
 2. inadequately  
 3. unwontedly  
 4. inversely

Question ID : 26433090513  
Status : Answered  
Chosen Option : 1

**Comprehension:**

In the following passage, some words have been deleted. Read the passage carefully and select the most appropriate option to fill in each blank.

Cancer is a disease in which some of the body's cells grow (1)\_\_\_\_\_ and spread to other parts of the body. Cancer can start (2)\_\_\_\_\_ anywhere in the human body, which is made up of trillions of cells. Normally, human cells grow and multiply (through a process called cell division) to (3)\_\_\_\_\_ new cells as the body needs them. When cells grow old or become damaged, they die, and new cells take their place. Sometimes, this orderly process (4)\_\_\_\_\_ down, and abnormal or damaged cells grow and multiply when they shouldn't. These cells may form tumours, which are lumps of tissue. Tumours can be cancerous or (5)\_\_\_\_\_.

**SubQuestion No : 17**

**Q.17** Select the most appropriate option to fill in blank 2.

- Ans**  1. almost  
 2. just  
 3. barely  
 4. simply

Question ID : 26433090514  
Status : Answered  
Chosen Option : 4

**Comprehension:**

In the following passage, some words have been deleted. Read the passage carefully and select the most appropriate option to fill in each blank.

Cancer is a disease in which some of the body's cells grow (1)\_\_\_\_\_ and spread to other parts of the body. Cancer can start (2)\_\_\_\_\_ anywhere in the human body, which is made up of trillions of cells. Normally, human cells grow and multiply (through a process called cell division) to (3)\_\_\_\_\_ new cells as the body needs them. When cells grow old or become damaged, they die, and new cells take their place. Sometimes, this orderly process (4)\_\_\_\_\_ down, and abnormal or damaged cells grow and multiply when they shouldn't. These cells may form tumours, which are lumps of tissue. Tumours can be cancerous or (5)\_\_\_\_\_.

**SubQuestion No : 18**

**Q.18** Select the most appropriate option to fill in blank 3.

- Ans
- 1. shape
  - 2. build
  - 3. form
  - 4. formulate

Question ID : 26433090515

Status : Answered

Chosen Option : 3

**Comprehension:**

In the following passage, some words have been deleted. Read the passage carefully and select the most appropriate option to fill in each blank.

Cancer is a disease in which some of the body's cells grow (1)\_\_\_\_\_ and spread to other parts of the body. Cancer can start (2)\_\_\_\_\_ anywhere in the human body, which is made up of trillions of cells. Normally, human cells grow and multiply (through a process called cell division) to (3)\_\_\_\_\_ new cells as the body needs them. When cells grow old or become damaged, they die, and new cells take their place. Sometimes, this orderly process (4)\_\_\_\_\_ down, and abnormal or damaged cells grow and multiply when they shouldn't. These cells may form tumours, which are lumps of tissue. Tumours can be cancerous or (5)\_\_\_\_\_.

**SubQuestion No : 19**

**Q.19** Select the most appropriate option to fill in blank 4.

- Ans
- 1. breaks
  - 2. slows
  - 3. powers
  - 4. blows

Question ID : 26433090516

Status : Answered

Chosen Option : 1

**Comprehension:**

In the following passage, some words have been deleted. Read the passage carefully and select the most appropriate option to fill in each blank.

Cancer is a disease in which some of the body's cells grow (1)\_\_\_\_\_ and spread to other parts of the body. Cancer can start (2)\_\_\_\_\_ anywhere in the human body, which is made up of trillions of cells. Normally, human cells grow and multiply (through a process called cell division) to (3)\_\_\_\_\_ new cells as the body needs them. When cells grow old or become damaged, they die, and new cells take their place. Sometimes, this orderly process (4)\_\_\_\_\_ down, and abnormal or damaged cells grow and multiply when they shouldn't. These cells may form tumours, which are lumps of tissue. Tumours can be cancerous or (5)\_\_\_\_\_.

**SubQuestion No : 20****Q.20 Select the most appropriate option to fill in blank 5.**

- Ans  1. benign  
 2. benevolent  
 3. malignant  
 4. mild

Question ID : 26433090517  
Status : Answered  
Chosen Option : 3

Section : Part-D-Hindi

Q.1 निम्नलिखित वाक्य में रेखांकित शब्द के विलोम शब्द का प्रयोग करके रिक्त स्थान की पूर्ति कीजिए।  
यदि उन्नति उचित दिशा में न हो तो वह \_\_\_\_\_ का कारण बनती है।

- Ans  1. अपमान  
 2. अउन्नति  
 3. अवनति  
 4. दुराग्रह

Question ID : 26433091343  
Status : Not Answered  
Chosen Option : --

Q.2 नीचे दिए शब्द के लिए उचित वाक्यांश दिए गए विकल्पों में से चुनिए।  
गोचर

- Ans  1. जिसका ज्ञान इंद्रियों द्वारा हो सके  
 2. गाय को चराने वाला  
 3. जिसका ज्ञान इंद्रियों द्वारा न हो सके  
 4. जो गाय के साथ चलता है

Question ID : 26433079209  
Status : Not Answered  
Chosen Option : --



Q.3 निम्न वाक्य में त्रुटि पहचानकर वाक्य शुद्ध कीजिए।  
चतुर से काम करे तो सफलता अवश्य मिलती है।

- Ans  1. चतुराई से काम करने से सफलता अवश्य मिलती है।  
 2. चतुर होकर काम करने से सफल अवश्य मिलता है।  
 3. चतुराई से काम करने से सफल अवश्य मिलता है।  
 4. चतुरी से काम करे तो सफलता अवश्य मिलती है।

Question ID : 26433063028  
Status : Not Answered  
Chosen Option : --

Q.4 विकल्पों में दिए गए किस वाक्य में निम्न शब्द के सही पर्यायवाची शब्द का प्रयोग किया गया है?  
पंडित

- Ans  1. मनिषी मेरे द्वार पर आये हैं।  
 2. मनीशी मेरे द्वार पर आये हैं।  
 3. मनीषी मेरे द्वार पर आये हैं।  
 4. मनीसी ज्ञान से पूर्ण हैं।

Question ID : 26433091217  
Status : Not Answered  
Chosen Option : --

Q.5 निम्न में से कौन-सा शब्द 'जानकी' का पर्यायवाची नहीं है?

- Ans  1. वैदेही  
 2. सीता  
 3. सूर्यसुता  
 4. जनकसुता

Question ID : 26433066897  
Status : Not Answered  
Chosen Option : --

Q.6 निम्नलिखित अर्थ को व्यक्त करने वाले मुहावरे का चयन विकल्पों में से कीजिए।  
बहुत खुश होना

- Ans  1. मूसलों ढोल बजाना  
 2. मुँह पर नाक न होना  
 3. मैदान हाथ आना  
 4. मुँह में तिनका लेना

Question ID : 26433070014  
Status : Not Answered  
Chosen Option : --

Q.7 'शहर का आधा भाग \_\_\_\_\_ चुका है।' इस वाक्य में रिक्त स्थान की पूर्ति उपयुक्त वाक्य-खंड द्वारा कीजिए।

- Ans
- 1. जल में निमग्न हो
  - 2. जलमग्न हो
  - 3. जल से मग्न हो
  - 4. पानी में तैर रहा हो

Question ID : 26433080895  
Status : Not Answered  
Chosen Option : --

Q.8 इस साल व्यापार में बहुत लाभ हुआ।  
उपरोक्त वाक्य में रेखांकित शब्द के विलोम शब्द का चयन विकल्पों में से कीजिए।

- Ans
- 1. खतरा
  - 2. फायदा
  - 3. तकादा
  - 4. हानि

Question ID : 26433079745  
Status : Not Answered  
Chosen Option : --

Q.9 निम्नलिखित वाक्यांश के लिए सार्थक शब्द क्या होगा?  
जो व्यक्ति दूर की बात सोचता है

- Ans
- 1. दूरभाषी
  - 2. दूरबीन
  - 3. दूरदर्शी
  - 4. दूरदृष्टि

Question ID : 26433069984  
Status : Not Answered  
Chosen Option : --

Q.10 दिए गए वाक्यांश के लिए सार्थक शब्द बताइए।  
जो काम से जी चुराता हो

- Ans
- 1. कामचोर
  - 2. चालाक
  - 3. निकम्मा
  - 4. कमजोर

Question ID : 26433062590  
Status : Not Answered  
Chosen Option : --

Q.11 निम्नलिखित मुहावरे के उपयुक्त अर्थ का चयन विकल्पों में से कीजिए।  
धज्जियां उड़ाना

- Ans
- 1. चम्पत हो जाना
  - 2. प्रयास करना
  - 3. नष्ट – भ्रष्ट करना
  - 4. क्रोध करना

Question ID : 26433070001  
Status : Not Answered  
Chosen Option : --

Q.12 निम्नलिखित वाक्य के किस शब्द में अशुद्धि है?  
उनकी दृष्टि शुन्य आकाश की ओर थी।

- Ans
- 1. दृष्टि
  - 2. उनकी
  - 3. शुन्य
  - 4. आकाश

Question ID : 26433066772  
Status : Not Answered  
Chosen Option : --

Q.13 निम्नलिखित में से शुद्ध वाक्य कौन सा है?

- Ans
- 1. काली गाय अच्छी होती है।
  - 2. काली गाय अच्छा होती है।
  - 3. काली गाय अच्छी होता है।
  - 4. काला गाय अच्छी होती है।

Question ID : 26433066834  
Status : Not Answered  
Chosen Option : --

Q.14 तपस्वी ने बहुत तपने के पश्चात यह सिद्धि प्राप्त की है।  
वाक्य के रेखांकित शब्द के स्थान पर भाववाचक संज्ञा शब्द होगा-

- Ans
- 1. तपन
  - 2. तपभूमि
  - 3. तपस्या
  - 4. तपोवन

Question ID : 26433062855  
Status : Not Answered  
Chosen Option : --

Q.15 लोग रंगीन चाँदनी में नौका विहार का आनंद ले रहे थे।  
उपरोक्त वाक्य में रेखांकित शब्द के स्थान पर सर्वोचित शब्द का चयन विकल्पों में से कीजिए।

- Ans
- 1. सुनहरी
  - 2. रोशन
  - 3. पीली
  - 4. धवल

Question ID : 26433065692  
Status : Not Answered  
Chosen Option : --

**Comprehension:**

नीचे पूछे गए प्रश्न संख्या 1-5 के उत्तर दिए गए गद्यांश के आधार पर दीजिए।  
विदेशी भाषाओं या दूसरों की भाषाओं को पढ़ने से पहले अपनी राष्ट्रभाषा और (1) \_\_\_\_\_ का ज्ञान नितांत आवश्यक है। अपनी भाषा में हृदय बोलता है, इससे माँ की ममता, राष्ट्रीय संबंधों का माधुर्य और अपने को जानने-पहचानने की सरलता रहती है। अपनी भाषा में अपनापन रहता है। इसके लिए हमें विशेष श्रम नहीं करना पड़ता, व्यर्थ की (2) \_\_\_\_\_ और समय की बर्बादी नहीं करनी पड़ती। हिंदी हमारी मातृभाषा है। इसलिए इसके व्यवहार में हमें जितनी सहजता और सुविधा का बोध होता है, उतनी सहजता और सुविधा का बोध विदेशी भाषाओं में नहीं होता। कारण यह है कि हिंदी हम घर – बाहर सभी जगह बोलते हैं, इसी में हम अपने मन में बातें सोचते हैं, किसी (3) \_\_\_\_\_ भाषा में नहीं। इसीलिए भाषा हर तरह की शिक्षा का माध्यम होती है, चाहे वह अन्य किसी भाषा की शिक्षा हो या कला कारीगरों की। अगर हम कोई विदेशी भाषा सीखते हैं तो अपनी मातृभाषा के माध्यम से ही। इसलिए अब हम किसी दूसरी सीखी हुई भाषा को बोलते हैं, तो मातृभाषा में मन में जो हम सोचते हैं, वह उसी का (4) \_\_\_\_\_ होता है। इसलिए इसके बिना हम रह नहीं सकते। यह हमारे दैनिक जीवन के साथ (5) \_\_\_\_\_ है। जैसे – दूध में पानी घुला होता है उसी तरह मातृभाषा में भी हमारी माँ का संस्कार, उसका प्यार और मिठास है। अतः अपनी भाषा सर्वोपरि है। भाषाओं के अध्ययन में इसी का सबसे ऊँचा स्थान है। यही कारण है कि सभी सभ्य देशों में शिक्षा मातृभाषा के माध्यम से दी जाती है।

SubQuestion No : 16

Q.16 विकल्पों में से उपयुक्त शब्द का चयन कर रिक्त स्थान (1) की पूर्ति कीजिए।

- Ans
- 1. मातृभाषा
  - 2. अपभाषा
  - 3. कूटभाषा
  - 4. भाषा

Question ID : 26433079177  
Status : Not Answered  
Chosen Option : --

**Comprehension:**

नीचे पूछे गए प्रश्न संख्या 1-5 के उत्तर दिए गए गद्यांश के आधार पर दीजिए।  
विदेशी भाषाओं या दूसरों की भाषाओं को पढ़ने से पहले अपनी राष्ट्रभाषा और (1) \_\_\_\_\_ का ज्ञान नितांत आवश्यक है। अपनी भाषा में हृदय बोलता है, इससे माँ की ममता, राष्ट्रीय संबंधों का माधुर्य और अपने को जानने-पहचानने की सरलता रहती है। अपनी भाषा में अपनापन रहता है। इसके लिए हमें विशेष श्रम नहीं करना पड़ता, व्यर्थ की (2) \_\_\_\_\_ और समय की बर्बादी नहीं करनी पड़ती। हिंदी हमारी मातृभाषा है। इसलिए इसके व्यवहार में हमें जितनी सहजता और सुविधा का बोध होता है, उतनी सहजता और सुविधा का बोध विदेशी भाषाओं में नहीं होता। कारण यह है कि हिंदी हम घर – बाहर सभी जगह बोलते हैं, इसी में हम अपने मन में बातें सोचते हैं, किसी (3) \_\_\_\_\_ भाषा में नहीं। इसीलिए भाषा हर तरह की शिक्षा का माध्यम होती है, चाहे वह अन्य किसी भाषा की शिक्षा हो या कला कारीगरों की। अगर हम कोई विदेशी भाषा सीखते हैं तो अपनी मातृभाषा के माध्यम से ही। इसलिए अब हम किसी दूसरी सीखी हुई भाषा को बोलते हैं, तो मातृभाषा में मन में जो हम सोचते हैं, वह उसी का (4) \_\_\_\_\_ होता है। इसलिए इसके बिना हम रह नहीं सकते। यह हमारे दैनिक जीवन के साथ (5) \_\_\_\_\_ है। जैसे – दूध में पानी घुला होता है उसी तरह मातृभाषा में भी हमारी माँ का संस्कार, उसका प्यार और मिठास है। अतः अपनी भाषा सर्वोपरि है। भाषाओं के अध्ययन में इसी का सबसे ऊँचा स्थान है। यही कारण है कि सभी सभ्य देशों में शिक्षा मातृभाषा के माध्यम से दी जाती है।

**SubQuestion No : 17**

Q.17 निम्नलिखित विकल्पों में से स्त्रीलिंग शब्द का चयन कर रिक्त स्थान (2) की पूर्ति कीजिए।

- Ans  1. माथा पिट्टन  
 2. माथापच्ची  
 3. माथा घिसना  
 4. माथा टेकना

Question ID : 26433079178

Status : Not Answered

Chosen Option : --

**Comprehension:**

नीचे पूछे गए प्रश्न संख्या 1-5 के उत्तर दिए गए गद्यांश के आधार पर दीजिए।  
विदेशी भाषाओं या दूसरों की भाषाओं को पढ़ने से पहले अपनी राष्ट्रभाषा और (1) \_\_\_\_\_ का ज्ञान नितांत आवश्यक है। अपनी भाषा में हृदय बोलता है, इससे माँ की ममता, राष्ट्रीय संबंधों का माधुर्य और अपने को जानने-पहचानने की सरलता रहती है। अपनी भाषा में अपनापन रहता है। इसके लिए हमें विशेष श्रम नहीं करना पड़ता, व्यर्थ की (2) \_\_\_\_\_ और समय की बर्बादी नहीं करनी पड़ती। हिंदी हमारी मातृभाषा है। इसलिए इसके व्यवहार में हमें जितनी सहजता और सुविधा का बोध होता है, उतनी सहजता और सुविधा का बोध विदेशी भाषाओं में नहीं होता। कारण यह है कि हिंदी हम घर – बाहर सभी जगह बोलते हैं, इसी में हम अपने मन में बातें सोचते हैं, किसी (3) \_\_\_\_\_ भाषा में नहीं। इसीलिए भाषा हर तरह की शिक्षा का माध्यम होती है, चाहे वह अन्य किसी भाषा की शिक्षा हो या कला कारीगरों की। अगर हम कोई विदेशी भाषा सीखते हैं तो अपनी मातृभाषा के माध्यम से ही। इसलिए अब हम किसी दूसरी सीखी हुई भाषा को बोलते हैं, तो मातृभाषा में मन में जो हम सोचते हैं, वह उसी का (4) \_\_\_\_\_ होता है। इसलिए इसके बिना हम रह नहीं सकते। यह हमारे दैनिक जीवन के साथ (5) \_\_\_\_\_ है। जैसे – दूध में पानी घुला होता है उसी तरह मातृभाषा में भी हमारी माँ का संस्कार, उसका प्यार और मिठास है। अतः अपनी भाषा सर्वोपरि है। भाषाओं के अध्ययन में इसी का सबसे ऊँचा स्थान है। यही कारण है कि सभी सभ्य देशों में शिक्षा मातृभाषा के माध्यम से दी जाती है।

**SubQuestion No : 18**

Q.18 'स्वदेशी' के विलोम शब्द से रिक्त स्थान (3) की पूर्ति कीजिए।

- Ans  1. शहरी  
 2. विदेशी  
 3. देशी  
 4. ग्रामीण

Question ID : 26433079179

Status : Not Answered

Chosen Option : --

**Comprehension:**

नीचे पूछे गए प्रश्न संख्या 1-5 के उत्तर दिए गए गद्यांश के आधार पर दीजिए।  
विदेशी भाषाओं या दूसरों की भाषाओं को पढ़ने से पहले अपनी राष्ट्रभाषा और (1) \_\_\_\_\_ का ज्ञान नितांत आवश्यक है। अपनी भाषा में हृदय बोलता है, इससे माँ की ममता, राष्ट्रीय संबंधों का माधुर्य और अपने को जानने-पहचानने की सरलता रहती है। अपनी भाषा में अपनापन रहता है। इसके लिए हमें विशेष श्रम नहीं करना पड़ता, व्यर्थ की (2) \_\_\_\_\_ और समय की बर्बादी नहीं करनी पड़ती। हिंदी हमारी मातृभाषा है। इसलिए इसके व्यवहार में हमें जितनी सहजता और सुविधा का बोध होता है, उतनी सहजता और सुविधा का बोध विदेशी भाषाओं में नहीं होता। कारण यह है कि हिंदी हम घर – बाहर सभी जगह बोलते हैं, इसी में हम अपने मन में बातें सोचते हैं, किसी (3) \_\_\_\_\_ भाषा में नहीं। इसीलिए भाषा हर तरह की शिक्षा का माध्यम होती है, चाहे वह अन्य किसी भाषा की शिक्षा हो या कला कारीगरों की। अगर हम कोई विदेशी भाषा सीखते हैं तो अपनी मातृभाषा के माध्यम से ही। इसलिए अब हम किसी दूसरी सीखी हुई भाषा को बोलते हैं, तो मातृभाषा में मन में जो हम सोचते हैं, वह उसी का (4) \_\_\_\_\_ होता है। इसलिए इसके बिना हम रह नहीं सकते। यह हमारे दैनिक जीवन के साथ (5) \_\_\_\_\_ है। जैसे – दूध में पानी घुला होता है उसी तरह मातृभाषा में भी हमारी माँ का संस्कार, उसका प्यार और मिठास है। अतः अपनी भाषा सर्वोपरि है। भाषाओं के अध्ययन में इसी का सबसे ऊँचा स्थान है। यही कारण है कि सभी सभ्य देशों में शिक्षा मातृभाषा के माध्यम से दी जाती है।

**SubQuestion No : 19**

Q.19 'किसी के कहने के बाद कहना' इस वाक्यांश के लिए उपयोग किए जाने वाले एक शब्द से रिक्त स्थान (4) की पूर्ति कीजिए।

- Ans
- 1. टिप्पण
  - 2. आलेखन
  - 3. संक्षेपण
  - 4. अनुवाद

Question ID : 26433079180

Status : Not Answered

Chosen Option : --

**Comprehension:**

नीचे पूछे गए प्रश्न संख्या 1-5 के उत्तर दिए गए गद्यांश के आधार पर दीजिए।  
विदेशी भाषाओं या दूसरों की भाषाओं को पढ़ने से पहले अपनी राष्ट्रभाषा और (1) \_\_\_\_\_ का ज्ञान नितांत आवश्यक है। अपनी भाषा में हृदय बोलता है, इससे माँ की ममता, राष्ट्रीय संबंधों का माधुर्य और अपने को जानने-पहचानने की सरलता रहती है। अपनी भाषा में अपनापन रहता है। इसके लिए हमें विशेष श्रम नहीं करना पड़ता, व्यर्थ की (2) \_\_\_\_\_ और समय की बर्बादी नहीं करनी पड़ती। हिंदी हमारी मातृभाषा है। इसलिए इसके व्यवहार में हमें जितनी सहजता और सुविधा का बोध होता है, उतनी सहजता और सुविधा का बोध विदेशी भाषाओं में नहीं होता। कारण यह है कि हिंदी हम घर – बाहर सभी जगह बोलते हैं, इसी में हम अपने मन में बातें सोचते हैं, किसी (3) \_\_\_\_\_ भाषा में नहीं। इसीलिए भाषा हर तरह की शिक्षा का माध्यम होती है, चाहे वह अन्य किसी भाषा की शिक्षा हो या कला कारीगरों की। अगर हम कोई विदेशी भाषा सीखते हैं तो अपनी मातृभाषा के माध्यम से ही। इसलिए अब हम किसी दूसरी सीखी हुई भाषा को बोलते हैं, तो मातृभाषा में मन में जो हम सोचते हैं, वह उसी का (4) \_\_\_\_\_ होता है। इसलिए इसके बिना हम रह नहीं सकते। यह हमारे दैनिक जीवन के साथ (5) \_\_\_\_\_ है। जैसे – दूध में पानी घुला होता है उसी तरह मातृभाषा में भी हमारी माँ का संस्कार, उसका प्यार और मिठास है। अतः अपनी भाषा सर्वोपरि है। भाषाओं के अध्ययन में इसी का सबसे ऊँचा स्थान है। यही कारण है कि सभी सभ्य देशों में शिक्षा मातृभाषा के माध्यम से दी जाती है।

**SubQuestion No : 20**

Q.20 विकल्पों में से उपयुक्त शब्द का चयन कर रिक्तस्थान (5) की पूर्ति कीजिए।

- Ans
- 1. घुली - मिली
  - 2. चुलबुली
  - 3. हिली - डुली
  - 4. मिली - जुली

Question ID : 26433079181

Status : Not Answered

Chosen Option : --

## Constable GD in CAPFs SSF Rifleman GD in Assam Rifles and Sepoy in NCB Examination 2022

Roll Number	@Qmaths Telegram Channel
Candidate Name	@Qmaths Telegram Channel
Venue Name	ION Digital Zone iDZ Trinity 2 Headway 2 Kokta Bypass Road
Exam Date	17/01/2023
Exam Time	11:45 AM - 12:45 PM
Subject	Constable GD Examination 2022

### Section : Part-A-General Intelligence and Reasoning

**Q.1** In a certain code language, 'NATION' is written as 'MZGRLM' and 'PRINTS' is written as 'KIRMGH'. How will 'BOTTLE' be written in that language?

- Ans
- 1. OYGGLV
  - 2. YLGGOV
  - 3. OVGGYL
  - 4. YGGLOV

Question ID : 26433070330  
Status : Answered  
Chosen Option : 2

**Q.2** Select the correct mirror image of the given figure, when the mirror is placed at MN as shown below.



- Ans
- 1. M f O R r 7 p
  - 2. M f O R r 7 p
  - 3. W f O R r 7 p
  - 4. W f O R r 7 p

Question ID : 26433090150  
Status : Answered  
Chosen Option : 3

**Q.3** In a certain code, the word 'TEACHER' is written as 'RCYAFCP'. The word 'SCHOOL' is written as 'QAFMMJ'. How is the word 'SUBJECT' written in the same code?

- Ans
- 1. TVCKFDU
  - 2. RTAIDBS
  - 3. UWDLGEV
  - 4. QSZHCAR

Question ID : 26433090112  
Status : Answered  
Chosen Option : 1

Q.4 विकल्पों में दिए गए गणितीय चिह्नों का कौन सा संयोजन निम्न समीकरण में \* चिह्नों के स्थान पर क्रमिक रूप से आकर समीकरण को संतुलित करेगा?  
 $200 * 2 * 10 * 8 * 40 * 20$

Ans  1. -, +, ÷, =, ×

2. ÷, =, ×, +, -

3. ×, +, =, ÷, -

4. ×, =, ÷, +, -

Question ID : 26433094997

Status : Answered

Chosen Option : 2

Q.5 Which of the following terms will replace the question mark (?) in the given series?  
SDR, XHU, CLX, ?, MTD, RXG

Ans  1. GQZ

2. HPA

3. GPA

4. HQZ

Question ID : 26433069457

Status : Answered

Chosen Option : 2

Q.6 'A + B' का अर्थ है 'A, B की पुत्री है'  
'A - B' का अर्थ है 'A, B का पति है'  
'A × B' का अर्थ है 'A, B की माता है'  
'A ÷ B' का अर्थ है 'A, B का भाई है'  
यदि  $D + E + F - G \times H \div I - J$  है, तो निम्न में से कौन सा कथन सही नहीं है?

Ans  1. D, I की बहन है

2. E, I की बहन है

3. E, H की बहन है

4. E, G की पुत्री है

Question ID : 26433090049

Status : Answered

Chosen Option : 3

Q.7 सात व्यक्ति P, Q, R, S, T, U और V एक दूसरे के बगल में एक सीधी पंक्ति में उत्तर की ओर मुख करके बैठे हैं (किंतु उनका इसी क्रम में होना अनिवार्य नहीं है)। U, V के बाईं ओर ठीक बगल में बैठा है। R, V के बाईं ओर पांचवें स्थान पर बैठा है। R, P और T के ठीक बगल में बैठा है। S, R के दाईं ओर तीसरे स्थान पर बैठा है।  
Q के दाईं ओर ठीक बगल में कौन बैठा है?

Ans  1. U

2. V

3. T

4. S

Question ID : 26433080707

Status : Not Answered

Chosen Option : --



Q.8 तीन कथनों के बाद तीन निष्कर्ष I, II और III दिए गए हैं। यह मानते हुए कि कथनों में दी गयी जानकारी सही है, भले ही वह सामान्य रूप से ज्ञात तथ्यों से भिन्न लगे, निर्णय करें कि दिया गया कौन-सा/से निष्कर्ष तार्किक रूप से कथनों का अनुसरण करता है/करते हैं?

कथन:

सभी गाय स्तनधारी हैं।  
सभी गधे स्तनधारी हैं।  
सभी स्तनधारी जानवर हैं।

निष्कर्ष:

I. सभी गधे जानवर हैं।  
II. सभी जानवर गधे हैं।  
III. कुछ गाय गधे हैं।

- Ans
- 1. केवल निष्कर्ष II और III अनुसरण करते हैं
  - 2. केवल निष्कर्ष I अनुसरण करता है
  - 3. केवल निष्कर्ष I और II अनुसरण करते हैं
  - 4. सभी निष्कर्ष अनुसरण करते हैं

Question ID : 26433091716  
Status : Answered  
Chosen Option : 2

Q.9 Which option represents the correct order of the given words as they would appear in an English dictionary?

1. FLOWER  
2. FLETCHER  
3. FLORIST  
4. FILTER  
5. FLEUR

- Ans
- 1. 2, 4, 3, 5, 1
  - 2. 4, 2, 5, 3, 1
  - 3. 2, 4, 5, 3, 1
  - 4. 4, 5, 2, 3, 1

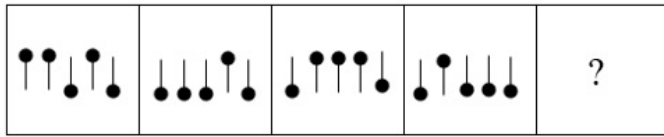
Question ID : 26433092547  
Status : Answered  
Chosen Option : 4

Q.10 Select the option that is related to the third term in the same way as the second term is related to the first term and the sixth term is related to the fifth term.  
4 : 74 :: 6 : ? :: 7 : 353

- Ans
- 1. 256
  - 2. 450
  - 3. 216
  - 4. 226

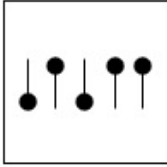
Question ID : 26433078850  
Status : Not Answered  
Chosen Option : --

**Q.11** Select the figure from among the given options that can replace the question mark (?) in the following series.

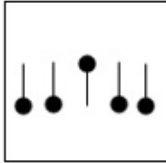


**Ans**

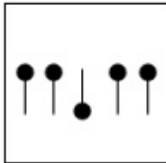
✓ 1.



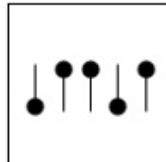
✗ 2.



✗ 3.



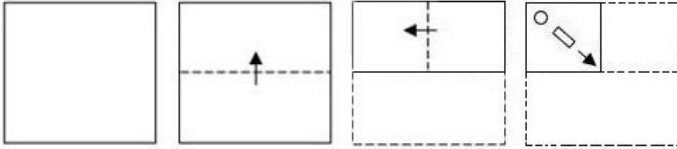
✗ 4.



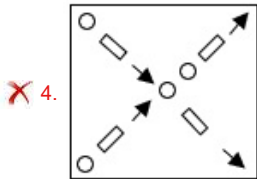
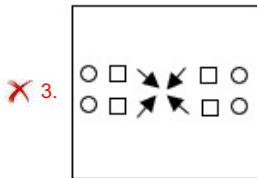
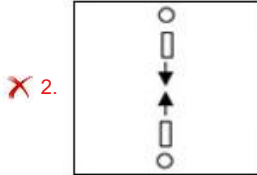
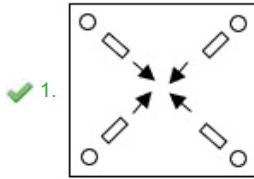
Question ID : 26433086244  
 Status : Answered  
 Chosen Option : 3

KD Job Updates

Q.12 A paper is folded and cut as shown below. How will it appear when unfolded?



Ans



Question ID : 26433090958  
Status : Answered  
Chosen Option : 1

Q.13 नीचे दिए गए समीकरण को गणितीय रूप से सही बनाने के लिए किन दो चिन्हों को परस्पर बदलना चाहिए?

$$63 + 5 \div 35 - 7 \times 21 = 23$$

Ans ✓ 1. × और +

✗ 2. + और -

✗ 3. ÷ और +

✗ 4. ÷ और ×

Question ID : 264330117568  
Status : Answered  
Chosen Option : 4

Q.14 Which of the following numbers will replace the question mark (?) in the given series?  
1, 4, 27, ?, 3125

Ans ✓ 1. 256

✗ 2. 64

✗ 3. 1024

✗ 4. 128

Question ID : 26433085704  
Status : Answered  
Chosen Option : 3

Q.15 कौन-सा अक्षर-समूह दी गई शृंखला में प्रश्नचिह्न (?) के स्थान पर आकर शृंखला को पूर्ण करेगा?  
EMRT, ?, IGVN, KDXK, MAZH

- Ans
- 1. HIUV
  - 2. IITP
  - 3. GJTK
  - 4. HKSR

Question ID : 26433080423  
Status : Answered  
Chosen Option : 4

Q.16 उस विकल्प का चयन करें जो तीसरे शब्द से उसी प्रकार संबंधित है जिस प्रकार दूसरा शब्द पहले शब्द से संबंधित है।

महाराष्ट्र : मुंबई :: पश्चिम बंगाल : ?

(शब्दों को अर्थपूर्ण शब्दों के रूप में मानना है, और उन्हें शब्द में अक्षरों/व्यंजनों/स्वरों की संख्या के आधार पर एक-दूसरे से संबंधित नहीं करना है।)

- Ans
- 1. बिहार
  - 2. कोलकाता
  - 3. भोपाल
  - 4. पंजाब

Question ID : 26433087199  
Status : Answered  
Chosen Option : 4

Q.17 आठ व्यक्ति - D, E, G, H, K, L, S और T एक सीधी पंक्ति में उत्तर की ओर मुख करके बैठे हैं। E पंक्ति के बाएं सिरे से दूसरे स्थान पर बैठा है। H और E के बीच कोई नहीं बैठा है। G, H के दाईं ओर चौथे स्थान पर बैठा है। K, G के बाईं ओर ठीक बगल में बैठा है। K और D के बीच केवल दो व्यक्ति बैठे हैं। L, S के दाईं ओर तीसरे स्थान पर बैठा है। S और T के बीच कितने व्यक्ति बैठे हैं?

- Ans
- 1. एक
  - 2. कोई भी नहीं
  - 3. तीन
  - 4. तीन से अधिक


Question ID : 26433092757  
Status : Answered  
Chosen Option : 3

Q.18 Select the option figure which is embedded in the given figure. (Rotation is NOT allowed)



Ans


✓ 1.




✗ 2.



✗ 3.



✗ 4.



Question ID : 26433085751  
Status : Answered  
Chosen Option : 1

Q.19 Which of the following numbers will replace the question mark (?) in the given series?  
5, 8, ?, 23, 35, 50, 68

Ans ✓ 1. 14

✗ 2. 10

✗ 3. 16

✗ 4. 12

Question ID : 26433090065  
Status : Answered  
Chosen Option : 2

**Q.20** Select the option that is related to the third word in the same way as the second word is related to the first word.

(The words must be considered as meaningful English words and must not be related to each other based on the number of letters/ number of consonants / vowels in the word)

Doctor : Hospital :: Astronomer : ?

- Ans
- 1. Profession
  - 2. Observatory
  - 3. Showroom
  - 4. Ship

Question ID : 26433068056  
Status : Answered  
Chosen Option : 1

Section : Part-B-General Knowledge and General awareness

**Q.1** Sitara Devi was famous for which of the following classical dance forms?

- Ans
- 1. Bharatnatyam
  - 2. Kathak
  - 3. Kathakali
  - 4. Manipuri

Question ID : 26433074077  
Status : Answered  
Chosen Option : 3

**Q.2** What is the share of India in the world's water resources?

- Ans
- 1. 8%
  - 2. 15%
  - 3. 4%
  - 4. 10%

Question ID : 26433092217  
Status : Answered  
Chosen Option : 2

**Q.3** Who inaugurated the new Durbar Hall at Raj Bhavan in Malabar Hill, Mumbai, in February 2022?

- Ans
- 1. Shri Narendra Modi
  - 2. Shri Ram Nath Kovind
  - 3. Shri Amit Shah
  - 4. Shri Uddhav Thackeray

Question ID : 26433081827  
Status : Answered  
Chosen Option : 4

**Q.4** The Shunga dynasty was established by whom among the following rulers?

- Ans
- 1. Vasumitra
  - 2. Agnimitra
  - 3. Vajramitra
  - 4. Pushyamitra

Question ID : 26433099154  
Status : Answered  
Chosen Option : 4

**Q.5 Who among the following has been honoured with Padma Shri for the extensive contribution in Mohiniattam?**

- Ans**
- 1. K. P. Kittappa Pillai
  - 2. Suchitra Ella
  - 3. Kanak Rele
  - 4. Mahaboob Subhani

Question ID : 264330115897  
Status : Answered  
Chosen Option : 4

**Q.6 In India, the stagnation in agriculture during the colonial rule was permanently broken by the \_\_\_\_\_.**

- Ans**
- 1. credit facility
  - 2. old cropping technique
  - 3. industrial licensing
  - 4. Green Revolution

Question ID : 26433064869  
Status : Answered  
Chosen Option : 2

**Q.7 As of November 2022, Basavaraj Bommai is the chief minister of \_\_\_\_\_ state of India.**

- Ans**
- 1. Telangana
  - 2. Karnataka
  - 3. Kerala
  - 4. Tamil Nadu

Question ID : 264330114891  
Status : Answered  
Chosen Option : 1

**Q.8 In Andhra Pradesh, who is the Chairman of the state business Advisory Committee?**

- Ans**
- 1. The Governor of the state
  - 2. The Finance Minister of the state
  - 3. The Speaker of state legislature
  - 4. The Chief Minister of the state

Question ID : 26433090680  
Status : Not Answered  
Chosen Option : --

**Q.9 Electrolysis of water is an example of \_\_\_\_\_.**

- Ans**
- 1. displacement reaction
  - 2. decomposition reaction
  - 3. combination reaction
  - 4. double displacement

Question ID : 264330115268  
Status : Answered  
Chosen Option : 3

Q.10 कृषि उपज का वह हिस्सा जो किसानों द्वारा बाजार में बेचा जाता है, \_\_\_\_\_ अधिशेष कहलाता है।

- Ans
- 1. आयातित
  - 2. संतुलित
  - 3. संशोधित
  - 4. बाजार

Question ID : 264330115437  
Status : Answered  
Chosen Option : 3

Q.11 क्रिकेट में, जब नियम के अनुसार फेंकी गई गेंद, बल्ले या बल्लेबाज को छुए बिना बल्लेबाज के पास से गुजर जाती है और उस गेंद पर रन बनते हैं, तो वे रन \_\_\_\_\_ के रूप में माने जाते हैं।

- Ans
- 1. वाइड बॉल
  - 2. लेग बाई
  - 3. बाई
  - 4. एलबीडब्ल्यू

Question ID : 26433096230  
Status : Answered  
Chosen Option : 2

Q.12 प्रति व्यक्ति आय उस देश के एक व्यक्ति द्वारा अर्जित औसत \_\_\_\_\_ को निरूपित करता है।

- Ans
- 1. देयता
  - 2. पूंजी
  - 3. आय
  - 4. ऋण

Question ID : 264330115355  
Status : Answered  
Chosen Option : 3

Q.13 निम्नलिखित में से कौन सा त्योहार उत्तर प्रदेश में नहीं मनाया जाता है?

- Ans
- 1. नुआखाई
  - 2. ताज महोत्सव
  - 3. बुद्ध महोत्सव
  - 4. गंगा महोत्सव

Question ID : 264330106221  
Status : Answered  
Chosen Option : 1

Q.14 डेकाथलॉन में कितनी स्पर्धाएं (events) होती हैं?

- Ans
- 1. 10
  - 2. 12
  - 3. 9
  - 4. 8

Question ID : 26433092335  
Status : Not Answered  
Chosen Option : --



Q.15 निम्नलिखित में से किस तरल का पृष्ठ तनाव सबसे अधिक होता है?

- Ans  1. एथेन  
 2. एथेनॉल  
 3. जल  
 4. मेथेनॉल

Question ID : 26433089651  
Status : Answered  
Chosen Option : 4

Q.16 Articles 25 to 28 of the Indian Constitution refer to the:

- Ans  1. right against exploitation  
 2. cultural and educational rights  
 3. right to constitutional remedies  
 4. right to freedom of religion

Question ID : 26433090670  
Status : Answered  
Chosen Option : 3

Q.17 निम्नलिखित में से कौन-सी, भारतीय रेलवे ट्रैक की एक श्रेणी नहीं है?

- Ans  1. ब्रॉड गेज  
 2. मीटर गेज  
 3. फुट गेज  
 4. नैरो गेज

Question ID : 264330115602  
Status : Answered  
Chosen Option : 2

Q.18 In February \_\_\_\_\_, Mahatma Gandhi decided to withdraw the Non-Cooperation Movement.

- Ans  1. 1925  
 2. 1927  
 3. 1922  
 4. 1924

Question ID : 26433089902  
Status : Answered  
Chosen Option : 4

Q.19 निम्नलिखित में से कौन जून 2022 में आजमगढ़ निर्वाचन क्षेत्र, उत्तर प्रदेश से धर्मेन्द्र यादव को पराजित करके सांसद बना?

- Ans  1. दिनेश लाल यादव  
 2. घनश्याम सिंह लोधी  
 3. अखिलेश यादव  
 4. यशवंत सिंह

Question ID : 264330114975  
Status : Answered  
Chosen Option : 4

Q.20 Unemployment is measured in India on the methods prescribed by the:

- Ans
- 1. National Employment Department
  - 2. National Sample Survey Organisation
  - 3. National Stock Exchange
  - 4. Reserve Bank of India

Question ID : 26433092892  
Status : Not Answered  
Chosen Option : --

Section : Part-C-Elementary Mathematics

Q.1 If a principal of ₹22,445 is deposited at the rate of 30% per annum for two years and interest is compounding annually, then what will be the amount (Approximately)?

- Ans
- 1. ₹37,339
  - 2. ₹37,933
  - 3. ₹39,733
  - 4. ₹39,337

Question ID : 26433092028  
Status : Answered  
Chosen Option : 2

Q.2 A shopkeeper sells shirts at a price of ₹ 800 per shirt. He allows a discount of 10% to all customers making full cash payment, and to customers buying 10 shirts at a time, he gives two shirts free. If a customer is willing to take both the discounts, what net effective discount can he/she avail?( the shopkeeper charges for 10 shirts but gives two additional shirts in the same amount) this is only for clarity and not a part of stem . Stem language is correct

- Ans
- 1. 15%
  - 2. 25%
  - 3. 12.5%
  - 4. 10%

Question ID : 26433092144  
Status : Not Answered  
Chosen Option : --

Q.3  $\frac{1}{3}$  of grocery is sold at 18% profit,  $\frac{1}{4}$  is sold at 25% profit, and the rest at 30% profit. If the total profit is ₹1,980, then find the value of the grocery.

- Ans
- 1. ₹8,500
  - 2. ₹8,400
  - 3. ₹8,000
  - 4. ₹8,200

Question ID : 26433080169  
Status : Answered  
Chosen Option : 2

Q.4 The price of an item decreased by 8% and then increased by 12%. What is the approximate effective change in the price in percentage?

- Ans
- 1. 3.5%
  - 2. 3%
  - 3. 16.67%
  - 4. 4%

Question ID : 26433085434  
Status : Answered  
Chosen Option : 1

Q.5 If  $42 \div 2 + m \times 3 - 22 \div 11 + 3 = 28$ , then the value of m is:

- Ans
- 1. 3
  - 2. 0
  - 3. 2
  - 4. 1

Question ID : 26433087333  
Status : Answered  
Chosen Option : 3

Q.6 A and B can complete a work in 18 days and 27 days, respectively. They start working together and after 8 days, A leaves. In how many days B complete the remaining work?

- Ans
- 1. 9
  - 2. 8
  - 3. 5
  - 4. 7

Question ID : 26433081072  
Status : Answered  
Chosen Option : 1

Q.7 If the ratio of the radius and height of a cylinder is 3 : 2 and radius is 21 cm, then the curved surface area (in  $\text{cm}^2$ ) is: ( Use  $\pi = 22/7$  )

- Ans
- 1. 1848
  - 2. 1884
  - 3. 1488
  - 4. 1948

Question ID : 26433075822  
Status : Answered  
Chosen Option : 1

Q.8 The radius of a cylindrical vessel is increased by 50% and the height is decreased by 50%.What is the change in its volume?

- Ans
- 1. 8% increase
  - 2. 12.5% increase
  - 3. No change
  - 4. 12.5% decrease

Question ID : 26433091904  
Status : Answered  
Chosen Option : 3

**Q.9** A thief running at 7 km/h is chased by a policeman, whose speed is 8 km/h. If the thief is 85 m ahead of the policeman, then the time required for the policeman to catch the thief will be:

- Ans
- 1. 6.2 minutes
  - 2. 3.2 minutes
  - 3. 4.3 minutes
  - 4. 5.1 minutes

Question ID : 26433080132  
Status : Answered  
Chosen Option : 2

**Q.10** In an alloy of 60 grams, the ratio of gold and copper is 2 : 1. How much more of copper should be added to make the ratio 1 : 2?

- Ans
- 1. 80 grams
  - 2. 54 grams
  - 3. 40 grams
  - 4. 60 grams

Question ID : 26433091898  
Status : Answered  
Chosen Option : 1

**Q.11** A and B together do a piece of work in 12 days, B and C in 15 days, and C and A in 20 days. In how many days can they finish the work if all of them work together?

- Ans
- 1. 13
  - 2. 9
  - 3. 10
  - 4. 12

Question ID : 26433090264  
Status : Answered  
Chosen Option : 2

**Q.12** A pen costs ₹121.5 and its marked price is ₹150. What should be two equal successive percentage discounts on marked price to have no profit or loss?

- Ans
- 1. 12.56%
  - 2. 15%
  - 3. 11.56%
  - 4. 10%

Question ID : 26433081711  
Status : Answered  
Chosen Option : 2

**Q.13** 14 men can build a 55 m long wall in 5 days. What length of a similar wall can be built by 21 men in 4 days?

- Ans
- 1. 58 m
  - 2. 60 m
  - 3. 66 m
  - 4. 62 m

Question ID : 26433082396  
Status : Answered  
Chosen Option : 2

Q.14 Abdul paid ₹5,832 after some years to a bank. He took ₹5,000 loan at the rate of 8% per annum to be compounded annually. Find the time (in years).

- Ans  1. 5  
 2. 2  
 3. 4  
 4. 3

Question ID : 26433091557  
Status : Answered  
Chosen Option : 2

Q.15 The greatest number of three digits that is divisible by 3,12, 24 and 36 is:

- Ans  1. 900  
 2. 936  
 3. 984  
 4. 924

Question ID : 26433091514  
Status : Answered  
Chosen Option : 2

Q.16 R buys two cars of same prices. He sells one at a profit of 12% and the other at a loss of 8%. His overall percentage of profit or loss is :

- Ans  1. 4% profit  
 2. 2% profit  
 3. 4% loss  
 4. 2% loss

Question ID : 26433081708  
Status : Answered  
Chosen Option : 2

Q.17 In what ratio must a grocer mix two varieties of tea worth Rs.120 per kg and Rs.130 per kg, so that by selling the mixture at Rs.136.40 per kg, he may gain 10%?

- Ans  1. 1 : 2  
 2. 3 : 4  
 3. 3 : 2  
 4. 2 : 5

Question ID : 26433082708  
Status : Answered  
Chosen Option : 1

Q.18 A policeman starts chasing a thief who is at a distance of 600 metres. The speeds of the policeman and the thief are 12 km/h and 10 km/h respectively. In what time will the thief be caught?

- Ans  1. 15 min  
 2. 16 min  
 3. 17 min  
 4. 18 min

Question ID : 26433080196  
Status : Answered  
Chosen Option : 3

Q.19 If the surface area of a sphere is  $30,184 \text{ cm}^2$ , then find its volume (use  $\pi = \frac{22}{7}$ ).

- Ans
- 1.  $\frac{616}{3} \times (49) \text{ cm}^3$
  - 2.  $\frac{616}{3} \times (49)^3 \text{ cm}^3$
  - 3.  $\frac{616}{3} \times (49)^2 \text{ cm}^3$
  - 4.  $\frac{620}{3} \times (49)^2 \text{ cm}^3$

Question ID : 26433083058  
Status : Not Answered  
Chosen Option : --

Q.20 40 litres of a mixture has 10% alcohol and the rest water. If 4 litres of water be mixed in it, the percentage of alcohol in the new mixture will be:

- Ans
- 1.  $9\frac{1}{11}\%$
  - 2.  $9\frac{2}{11}\%$
  - 3.  $11\frac{1}{9}\%$
  - 4.  $11\frac{1}{11}\%$

Question ID : 26433080367  
Status : Answered  
Chosen Option : 4

Section : Part-D-English

Q.1 Select the most appropriate option to substitute the underline segment in the given sentence.

Ever since that leak of private emails, everything the CEO has done has been viewed with suspicion.

- Ans
- 1. under water
  - 2. under wood
  - 3. under a cloud
  - 4. under soil

Question ID : 264330103756  
Status : Not Answered  
Chosen Option : --

Q.2 Select the most appropriate homonym to fill in the blank.

In order to keep \_\_\_\_\_ I jog for 45 minutes daily.

- Ans
- 1. fitt
  - 2. feat
  - 3. fit
  - 4. feet

Question ID : 26433094734  
Status : Answered  
Chosen Option : 3

**Q.3** Select the most appropriate option that can substitute the underlined segment in the given sentence.

The principal went a step farther to declare 12th June as a holiday for the entire group of schools.

- Ans**
- 1. went a step further more
  - 2. went a step further
  - 3. went a step farther more
  - 4. goes a step farther

Question ID : 26433091770  
Status : Answered  
Chosen Option : 4

**Q.4** Which of the following sentences is an example of present progressive tense?

- Ans**
- 1. Why has he delayed the work?
  - 2. Why were you worried about that?
  - 3. Why is he crying like that?
  - 4. Why had he been staying in Delhi for such a long time?

Question ID : 264330108883  
Status : Answered  
Chosen Option : 3

**Q.5** Which of the following options is most similar in meaning to the given word?  
**Magnificent**

- Ans**
- 1. Grand
  - 2. Enlarge
  - 3. Evil
  - 4. Capable

Question ID : 26433088812  
Status : Not Answered  
Chosen Option : --

**Q.6** Select the most appropriate synonym of the given word.

**Titan**

- Ans**
- 1. Puny
  - 2. Giant
  - 3. Predator
  - 4. Midget

Question ID : 26433072096  
Status : Answered  
Chosen Option : 4

**Q.7** Select the most appropriate synonym of the word given below to fill in the blank in the following sentence.

**Static**

Society is not a/an \_\_\_\_\_ but a dynamic entity.

- Ans**
- 1. variable
  - 2. capable
  - 3. inert
  - 4. independent

Question ID : 26433093262  
Status : Answered  
Chosen Option : 1

**Q.8** Select the most appropriate option that can substitute the underlined segment in the given sentence. If there is no need to substitute it, select 'No substitution'.

Although my friends begged me, I chose not to go for the reunion.

- Ans**
- 1. I choose no to go for the reunion.
  - 2. I chose not to go to the reunion.
  - 3. I have chose not to go for the reunion.
  - 4. No substitution

Question ID : 264330103767  
Status : Answered  
Chosen Option : 2

**Q.9** Select the most appropriate option that can substitute the underlined segment in the given sentence. If there is no need to substitute it, select 'No substitution'.

She was embarrassed because her friends were laughing on her.

- Ans**
- 1. her friends were laughing to her
  - 2. No substitution
  - 3. her friends were laughing at her
  - 4. her friends were laughing upon her

Question ID : 26433092940  
Status : Answered  
Chosen Option : 3

**Q.10** Select the most appropriate ANTONYM of the word given in brackets to fill in the blank.

The employer is too \_\_\_\_\_ (generous) to give a bonus to the employees.

- Ans**
- 1. kind
  - 2. stingy
  - 3. caring
  - 4. cripple

Question ID : 26433070460  
Status : Answered  
Chosen Option : 1



Q.11 Identify and correct the INCORRECTLY spelt word in the given sentence.

Many people were enduring mental agony and health issues with the change in lifestyle.

- Ans
- 1. agouny
  - 2. enduring
  - 3. mentel
  - 4. heaolth

Question ID : 26433092319  
Status : Answered  
Chosen Option : 2

Q.12 Select the most appropriate antonym of the bracketed word to fill in the blank.

The land near arid regions is not \_\_\_\_\_ (barren) enough for growing crops or any kind of vegetation.

- Ans
- 1. stark
  - 2. devoid
  - 3. fertile
  - 4. arid

Question ID : 26433060716  
Status : Answered  
Chosen Option : 3

Q.13 Select the most appropriate synonym of the underlined word.

All his attempts to save the wounded animal turned out to be futile.

- Ans
- 1. Unsuccessful
  - 2. Foresightful
  - 3. Mirthful
  - 4. Worthwhile

Question ID : 26433089060  
Status : Answered  
Chosen Option : 3

Q.14 Select the appropriate idiom that can replace the underlined word/phrase in the following sentence.

Grandmother revealed the secret.

- Ans
- 1. let the cat out of the bag
  - 2. let the chips fall where they may
  - 3. let things slide
  - 4. let the chance slip by

Question ID : 26433073280  
Status : Answered  
Chosen Option : 1

**Q.15 Choose the sentence that contains correct spellings.**

- Ans**  1. The sage said that life is nothing but a journey of comprimises.  
 2. The sage said that life is nothing but a journey of compromises.  
 3. The sage said that life is nothing but a journey of comprommizes.  
 4. The sage said that life is nothing but a journey of compormises.

Question ID : **26433086499**  
Status : **Answered**  
Chosen Option : **2**

**Comprehension:**

In the following passage, some words have been deleted. Read the passage carefully and select the most appropriate option to fill in each blank.  
One of the greatest (1)\_\_\_\_\_ to textiles is light. It is a form of energy that can fade colour and cause chemical and physical (2)\_\_\_\_\_ of textile fibres. Exposure to both, natural and ultra violet light can threaten the (3)\_\_\_\_\_ of textiles. Light damage occurs progressively. You must have noticed at home that the most faded folds of curtains are the first to (4)\_\_\_\_\_ and fall apart. Fading of colours and alterations of hues are the (5)\_\_\_\_\_ easy-to-detect signs of light damage.

**SubQuestion No : 16**

**Q.16 Select the most appropriate option to fill in blank number 1.**

- Ans**  1. beauties  
 2. warnings  
 3. additions  
 4. threats

Question ID : **26433098989**  
Status : **Answered**  
Chosen Option : **3**

**Comprehension:**

In the following passage, some words have been deleted. Read the passage carefully and select the most appropriate option to fill in each blank.  
One of the greatest (1)\_\_\_\_\_ to textiles is light. It is a form of energy that can fade colour and cause chemical and physical (2)\_\_\_\_\_ of textile fibres. Exposure to both, natural and ultra violet light can threaten the (3)\_\_\_\_\_ of textiles. Light damage occurs progressively. You must have noticed at home that the most faded folds of curtains are the first to (4)\_\_\_\_\_ and fall apart. Fading of colours and alterations of hues are the (5)\_\_\_\_\_ easy-to-detect signs of light damage.

**SubQuestion No : 17**

**Q.17 Select the most appropriate option to fill in blank number 2.**

- Ans**  1. degradation  
 2. mortification  
 3. disgrace  
 4. embarrassment

Question ID : **26433098990**  
Status : **Answered**  
Chosen Option : **2**

**Comprehension:**

In the following passage, some words have been deleted. Read the passage carefully and select the most appropriate option to fill in each blank.

One of the greatest (1)\_\_\_\_\_ to textiles is light. It is a form of energy that can fade colour and cause chemical and physical (2)\_\_\_\_\_ of textile fibres. Exposure to both, natural and ultra violet light can threaten the (3)\_\_\_\_\_ of textiles. Light damage occurs progressively. You must have noticed at home that the most faded folds of curtains are the first to (4)\_\_\_\_\_ and fall apart. Fading of colours and alterations of hues are the (5)\_\_\_\_\_ easy-to-detect signs of light damage.

**SubQuestion No : 18**

**Q.18 Select the most appropriate option to fill in blank number 3.**

- Ans**
- 1. seniority
  - 2. oldness
  - 3. dexterity
  - 4. longevity

Question ID : 26433098991  
Status : Answered  
Chosen Option : 2

**Comprehension:**

In the following passage, some words have been deleted. Read the passage carefully and select the most appropriate option to fill in each blank.

One of the greatest (1)\_\_\_\_\_ to textiles is light. It is a form of energy that can fade colour and cause chemical and physical (2)\_\_\_\_\_ of textile fibres. Exposure to both, natural and ultra violet light can threaten the (3)\_\_\_\_\_ of textiles. Light damage occurs progressively. You must have noticed at home that the most faded folds of curtains are the first to (4)\_\_\_\_\_ and fall apart. Fading of colours and alterations of hues are the (5)\_\_\_\_\_ easy-to-detect signs of light damage.

**SubQuestion No : 19**

**Q.19 Select the most appropriate option to fill in blank number 4.**

- Ans**
- 1. distill
  - 2. desolate
  - 3. shred
  - 4. irate

Question ID : 26433098992  
Status : Answered  
Chosen Option : 2

**Comprehension:**

In the following passage, some words have been deleted. Read the passage carefully and select the most appropriate option to fill in each blank.

One of the greatest (1)\_\_\_\_\_ to textiles is light. It is a form of energy that can fade colour and cause chemical and physical (2)\_\_\_\_\_ of textile fibres. Exposure to both, natural and ultra violet light can threaten the (3)\_\_\_\_\_ of textiles. Light damage occurs progressively. You must have noticed at home that the most faded folds of curtains are the first to (4)\_\_\_\_\_ and fall apart. Fading of colours and alterations of hues are the (5)\_\_\_\_\_ easy-to-detect signs of light damage.

**SubQuestion No : 20**

**Q.20 Select the most appropriate option to fill in blank number 5.**

- Ans**
- 1. earliest
  - 2. prompt
  - 3. premature
  - 4. former

Question ID : 26433098993  
Status : Answered  
Chosen Option : 1

Q.1 'मैं रविवार के दिन तुम्हारे घर आऊंगा।' वाक्य में रेखांकित वाक्य-खंड के स्थान पर उचित वाक्य-खंड या शब्द का प्रयोग करें।

- Ans
- 1. या
  - 2. के
  - 3. में
  - 4. को

Question ID : 26433062199  
Status : Not Answered  
Chosen Option : --

Q.2 निम्नलिखित वाक्य में रेखांकित खंड के स्थान पर प्रयुक्त होने वाले सबसे उपयुक्त विकल्प का चयन कीजिए।  
बच्चों को काटकर आम खिलाओ।

- Ans
- 1. काट आम
  - 2. आम काट
  - 3. आम काटकर
  - 4. काटकर

Question ID : 26433079574  
Status : Not Answered  
Chosen Option : --

Q.3 निम्न में से कौन-सा समूह 'गंगा' शब्द का पर्यायवाची समूह नहीं है?

- Ans
- 1. त्रिपथगा, सूर्यजा
  - 2. भागीरथी, सुरसरि
  - 3. सुरसरि, त्रिपथगा
  - 4. जाह्नवी, सुरसरि

Question ID : 26433067076  
Status : Not Answered  
Chosen Option : --

Q.4 'जो इतिहास से संबंध रखता है' वाक्यांश के लिए एक शब्द, \_\_\_\_\_ है।

- Ans
- 1. इतिहासकार
  - 2. खगोलिक
  - 3. ऐतिहासिक
  - 4. भौगोलिक

Question ID : 26433062943  
Status : Not Answered  
Chosen Option : --

Q.5 निम्नलिखित विकल्पों में से कौन सा एक वाक्य संकेतवाचक सर्वनाम का नहीं है?

- Ans
- 1. नदी में पानी नहीं है।
  - 2. वह आदमी एक विदेशी जासूस है।
  - 3. यह लड़का इस कक्षा का मॉनीटर है।
  - 4. ये मेरी पुस्तकें हैं।

Question ID : 26433091242  
Status : Not Answered  
Chosen Option : --

Q.6 निम्नलिखित वाक्यों में से शुद्ध वाक्य का चयन कीजिए।

- Ans
- 1. इस काम को देर होना स्वभाविक थी।
  - 2. काम इस में होना देर स्वभाविक था।
  - 3. इस काम में देरी होनी स्वाभाविक थी।
  - 4. इस काम में देर होनी स्वभाविक था।

Question ID : 26433091313  
Status : Not Answered  
Chosen Option : --

Q.7 "चारों ओर रात्रि का घोर अँधेरा छाया था।"

उक्त वाक्य में प्रयुक्त 'घोर' के स्थान पर उसके उचित समानार्थी शब्द का प्रयोग निम्न में से किस वाक्य में किया गया है?

- Ans
- 1. चारों ओर रात्रि का घमासान अँधेरा छाया था।
  - 2. चारों ओर रात्रि का गहरा अँधेरा छाया था।
  - 3. चारों ओर रात्रि का भयंकर अँधेरा छाया था।
  - 4. चारों ओर रात्रि का घनिष्ठ अँधेरा छाया था।

Question ID : 26433085148  
Status : Not Answered  
Chosen Option : --

Q.8 'दस रुपया में क्या आता है?' इस वाक्य में प्रयुक्त कौन सा शब्द अशुद्ध है?

- Ans
- 1. रुपया
  - 2. आता
  - 3. क्या
  - 4. दस

Question ID : 26433066801  
Status : Not Answered  
Chosen Option : --

Q.9 "नमन का आरोग्य अच्छा है।"

उक्त वाक्य में प्रयुक्त 'आरोग्य' के स्थान पर उसके समानार्थी शब्द का प्रयोग निम्न में से किस वाक्य में नहीं किया गया है?

- Ans
- 1. नमन की सेहत अच्छी है।
  - 2. नमन तंदुरुस्त है।
  - 3. नमन अस्वस्थ है।
  - 4. नमन का स्वास्थ्य अच्छा है।

Question ID : 26433085150  
Status : Not Answered  
Chosen Option : --

Q.10 ' \_\_\_\_\_ घोड़े पर सवार होना।'

उपरोक्त मुहावरे में रिक्त स्थान की पूर्ति उचित शब्द द्वारा कीजिए।

- Ans
- 1. हवा के
  - 2. तेजी के
  - 3. बातों के
  - 4. पानी के

Question ID : 26433069693  
Status : Not Answered  
Chosen Option : --

Q.11 निम्नलिखित विकल्पों में से प्रश्नवाचक सर्वनाम का कौन सा एक शुद्ध वाक्य नहीं है?

- Ans
- 1. द्विवेदी जी का मकान कौनसा है?
  - 2. क्या यह पत्र अपने प्राचार्य को देना है?
  - 3. इस थैले में क्या है?
  - 4. यह कौन- सी भाषा है?

Question ID : 26433091238  
Status : Not Answered  
Chosen Option : --

Q.12 'आँखों में \_\_\_\_\_ माला घिर आना।'  
उपरोक्त मुहावरे में रिक्त स्थान की पूर्ति उचित शब्द द्वारा कीजिए।

- Ans
- 1. पुष्प
  - 2. मोती
  - 3. मेघ
  - 4. फूल

Question ID : 26433069688  
Status : Not Answered  
Chosen Option : --

Q.13 नीचे दिए गए वाक्य के अशुद्ध भाग का चयन कीजिए।  
'रमेश को उस समय मुझसे बेफिजूल की बातें नहीं करनी चाहिए थीं।'

- Ans
- 1. नहीं करनी चाहिए थीं।
  - 2. रमेश को
  - 3. उस समय मुझसे
  - 4. बेफिजूल की बातें

Question ID : 26433085085  
Status : Not Answered  
Chosen Option : --

Q.14 निम्न में से कौन-सा शब्द 'पयोद' शब्द का पर्यायवाची शब्द है?

- Ans
- 1. मलीन
  - 2. बारिश
  - 3. सहचर
  - 4. जलधर

Question ID : 26433067082  
Status : Not Answered  
Chosen Option : --

Q.15 निम्नलिखित में से शुद्ध वाक्य का चयन कीजिए।

- Ans
- 1. बहनें पांच है सीमा।
  - 2. सीमा को पांच बहने हैं।
  - 3. सीमा की पांच बहनें हैं।
  - 4. सीमा बहनें हैं पांच।

Question ID : 26433091311  
Status : Not Answered  
Chosen Option : --

**Comprehension:**

दिए गए गद्यांश के अनुसार प्रश्न संख्या 1-5 के उत्तर दीजिए।  
भारतवर्ष ने कभी भी भौतिक वस्तुओं के (1) \_\_\_\_\_ को बहुत अधिक महत्त्व नहीं दिया है। उसकी दृष्टि से मनुष्य के भीतर जो महान (2) \_\_\_\_\_ गुण स्थिर भाव से बैठा हुआ है, वही चरम और परम है। लोभ-मोह, काम-क्रोध आदि विचार मनुष्य में (3) \_\_\_\_\_ रूप से विद्यमान रहते हैं, पर उन्हें प्रधान शक्ति मान लेना और अपने मन तथा बुद्धि को उन्हीं के इशारे पर छोड़ देना बहुत बुरा (4) \_\_\_\_\_ है। भारतवर्ष ने कभी भी उन्हें उचित नहीं माना, उन्हें सदा (5) \_\_\_\_\_ के बंधन से बाँधकर रखने का प्रयत्न किया है।

**SubQuestion No : 16**

Q.16 दिए गए शब्दों में से उचित शब्द चुनकर रिक्त स्थान (1) की पूर्ति कीजिए।

- Ans  1. संग्रह  
 2. विग्रह  
 3. लाभ  
 4. प्रयोग

Question ID : 26433094115  
Status : Not Answered  
Chosen Option : --

**Comprehension:**

दिए गए गद्यांश के अनुसार प्रश्न संख्या 1-5 के उत्तर दीजिए।  
भारतवर्ष ने कभी भी भौतिक वस्तुओं के (1) \_\_\_\_\_ को बहुत अधिक महत्त्व नहीं दिया है। उसकी दृष्टि से मनुष्य के भीतर जो महान (2) \_\_\_\_\_ गुण स्थिर भाव से बैठा हुआ है, वही चरम और परम है। लोभ-मोह, काम-क्रोध आदि विचार मनुष्य में (3) \_\_\_\_\_ रूप से विद्यमान रहते हैं, पर उन्हें प्रधान शक्ति मान लेना और अपने मन तथा बुद्धि को उन्हीं के इशारे पर छोड़ देना बहुत बुरा (4) \_\_\_\_\_ है। भारतवर्ष ने कभी भी उन्हें उचित नहीं माना, उन्हें सदा (5) \_\_\_\_\_ के बंधन से बाँधकर रखने का प्रयत्न किया है।

**SubQuestion No : 17**

Q.17 दिए गए शब्दों में से उचित शब्द चुनकर रिक्त स्थान (2) की पूर्ति कीजिए।

- Ans  1. महत्त्वपूर्ण  
 2. आंतरिक  
 3. विशेष  
 4. बाह्य

Question ID : 26433094116  
Status : Not Answered  
Chosen Option : --

**Comprehension:**

दिए गए गद्यांश के अनुसार प्रश्न संख्या 1-5 के उत्तर दीजिए।  
भारतवर्ष ने कभी भी भौतिक वस्तुओं के (1) \_\_\_\_\_ को बहुत अधिक महत्त्व नहीं दिया है। उसकी दृष्टि से मनुष्य के भीतर जो महान (2) \_\_\_\_\_ गुण स्थिर भाव से बैठा हुआ है, वही चरम और परम है। लोभ-मोह, काम-क्रोध आदि विचार मनुष्य में (3) \_\_\_\_\_ रूप से विद्यमान रहते हैं, पर उन्हें प्रधान शक्ति मान लेना और अपने मन तथा बुद्धि को उन्हीं के इशारे पर छोड़ देना बहुत बुरा (4) \_\_\_\_\_ है। भारतवर्ष ने कभी भी उन्हें उचित नहीं माना, उन्हें सदा (5) \_\_\_\_\_ के बंधन से बाँधकर रखने का प्रयत्न किया है।

**SubQuestion No : 18**

Q.18 दिए गए शब्दों में से उचित शब्द चुनकर रिक्त स्थान (3) की पूर्ति कीजिए।

- Ans  1. विशेष  
 2. ऐच्छिक  
 3. अनिवार्य  
 4. स्वाभाविक

Question ID : 26433094117  
Status : Not Answered  
Chosen Option : --

**Comprehension:**

दिए गए गद्यांश के अनुसार प्रश्न संख्या 1-5 के उत्तर दीजिए।  
भारतवर्ष ने कभी भी भौतिक वस्तुओं के (1) \_\_\_\_\_ को बहुत अधिक महत्त्व नहीं दिया है। उसकी दृष्टि से मनुष्य के भीतर जो महान (2) \_\_\_\_\_ गुण स्थिर भाव से बैठा हुआ है, वही चरम और परम है। लोभ-मोह, काम-क्रोध आदि विचार मनुष्य में (3) \_\_\_\_\_ रूप से विद्यमान रहते हैं, पर उन्हें प्रधान शक्ति मान लेना और अपने मन तथा बुद्धि को उन्हीं के इशारे पर छोड़ देना बहुत बुरा (4) \_\_\_\_\_ है। भारतवर्ष ने कभी भी उन्हें उचित नहीं माना, उन्हें सदा (5) \_\_\_\_\_ के बंधन से बाँधकर रखने का प्रयत्न किया है।

**SubQuestion No : 19**

Q.19 दिए गए शब्दों में से उचित शब्द चुनकर रिक्त स्थान (4) की पूर्ति कीजिए।

- Ans  1. आचरण  
 2. तरीका  
 3. कार्य  
 4. प्रणाली

Question ID : 26433094118

Status : Not Answered

Chosen Option : --

**Comprehension:**

दिए गए गद्यांश के अनुसार प्रश्न संख्या 1-5 के उत्तर दीजिए।  
भारतवर्ष ने कभी भी भौतिक वस्तुओं के (1) \_\_\_\_\_ को बहुत अधिक महत्त्व नहीं दिया है। उसकी दृष्टि से मनुष्य के भीतर जो महान (2) \_\_\_\_\_ गुण स्थिर भाव से बैठा हुआ है, वही चरम और परम है। लोभ-मोह, काम-क्रोध आदि विचार मनुष्य में (3) \_\_\_\_\_ रूप से विद्यमान रहते हैं, पर उन्हें प्रधान शक्ति मान लेना और अपने मन तथा बुद्धि को उन्हीं के इशारे पर छोड़ देना बहुत बुरा (4) \_\_\_\_\_ है। भारतवर्ष ने कभी भी उन्हें उचित नहीं माना, उन्हें सदा (5) \_\_\_\_\_ के बंधन से बाँधकर रखने का प्रयत्न किया है।

**SubQuestion No : 20**

Q.20 दिए गए शब्दों में से उचित शब्द चुनकर रिक्त स्थान (5) की पूर्ति कीजिए।

- Ans  1. बेड़ियों  
 2. संयम  
 3. मोह  
 4. रिश्तों

Question ID : 26433094119

Status : Not Answered

Chosen Option : --

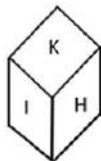


# Constable GD in CAPFs SSF Rifleman GD in Assam Rifles and Sepoy in NCB Examination 2022

Roll Number	<b>KD Job Updates</b>
Candidate Name	<b>KD Job Updates</b>
Venue Name	iON Digital Zone iDZ 1 Sector 62
Exam Date	17/01/2023
Exam Time	2:30 PM - 3:30 PM
Subject	Constable GD Examination 2022

## Section : Part-A-General Intelligence and Reasoning

**Q.1** Two different positions of the same dice are shown having alphabets 'G' to 'L'. Find the alphabet on the face opposite the face showing 'K'



- Ans
- 1. H
  - 2. J
  - 3. L
  - 4. G

Question ID : 26433085511  
Status : Answered  
Chosen Option : 3

**Q.2** Which of the following letter-clusters will replace the question mark (?) and complete the following letter-cluster series?  
FZ, GA, JZ, OA, ?

- Ans
- 1. VZ
  - 2. VY
  - 3. UA
  - 4. UZ

Question ID : 26433067284  
Status : Answered  
Chosen Option : 1

Q.3 Select the set in which the numbers are related in the same way as are the numbers of the following set.

(NOTE : Operations should be performed on the whole numbers, without breaking down the numbers into its constituent digits. E.g. 13 – Operations on 13 such as adding /subtracting/multiplying etc. to 13 can be performed. Breaking down 13 into 1 and 3 and then performing mathematical operations on 1 and 3 is NOT allowed)  
(40, 10, 150)  
(65, 35, 150)

- Ans
- 1. (75, 40, 225)
  - 2. (30, 12, 120)
  - 3. (55, 10, 225)
  - 4. (70, 30, 270)

Question ID : 26433076490  
Status : Not Answered  
Chosen Option : --

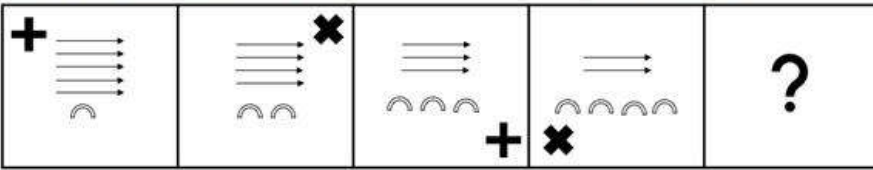
Q.4 Select the correct mirror image of the given figure when the mirror is placed at MN as shown below.



- Ans
- 1. R F 5 m G Y u s
  - 2. R F 5 m G Y u s
  - 3. R F 5 m G Y u s
  - 4. R F 5 m G Y u s

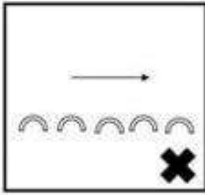
Question ID : 26433080807  
Status : Answered  
Chosen Option : 4

Q.5 Select the figure that will come next in the following figure series.

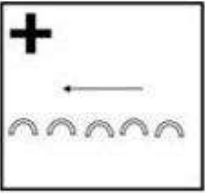


Ans

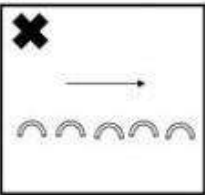
✗ 1.



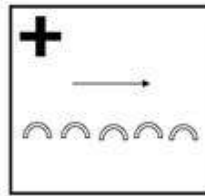
✗ 2.



✗ 3.



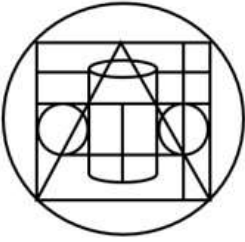
✓ 4.



KD Job Updates

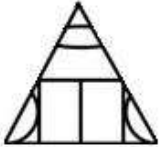
Question ID : 26433076494  
 Status : Answered  
 Chosen Option : 4

Q.6 Select the option figure which is embedded in the given figure. (Rotation is NOT allowed).



Ans

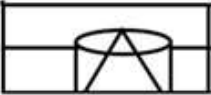
✓ 1.



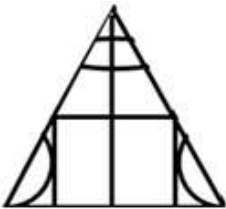
✗ 2.



✗ 3.



✗ 4.



Question ID : 26433076578

Status : Answered

Chosen Option : 1

Q.7 In a certain code language, ZERO is coded as 64, and FIVE is coded as 42. How will ELEVEN be coded in that language?

Ans ✗ 1. 64

✓ 2. 63

✗ 3. 62

✗ 4. 61

Question ID : 26433067998

Status : Answered

Chosen Option : 2

Q.8 If 'P' means 'addition', 'Q' means 'subtraction', 'R' means 'multiplication', and 'S' means 'division'. What will be the value of the following expression?  
76 P 42 S 6 Q 22 P (8 R 15)

- Ans
- 1. 171
  - 2. 221
  - 3. 181
  - 4. 121

Question ID : 264330114182  
Status : Answered  
Chosen Option : 3

Q.9 Which of the following numbers will replace the question marks (?) in the given series?  
11, 33, 66, 110, 165, ?, ?

- Ans
- 1. 231, 308
  - 2. 222, 236
  - 3. 226, 254
  - 4. 212, 234

Question ID : 26433069048  
Status : Answered  
Chosen Option : 1

Q.10 Select the option that is related to the fifth letter-cluster in the same way as the second letter-cluster is related to the first letter-cluster and the fourth letter-cluster is related to the third letter-cluster.  
BOTH: WJEQ :: FACE: SXVT :: KING: ?

- Ans
- 1. PRMT
  - 2. MKPI
  - 3. OQLS
  - 4. NPKR

Question ID : 26433057497  
Status : Not Attempted and Marked For Review  
Chosen Option : --

Q.11 Which of the following numbers will replace the question mark(?) in the given series?  
56000, 14000, 2800, ?, 140, 35, 7

- Ans
- 1. 400
  - 2. 560
  - 3. 700
  - 4. 350

Question ID : 26433080441  
Status : Marked For Review  
Chosen Option : 3

**Q.12** Three Statements are given followed by Three conclusions numbered I, II and III. Assuming the statements to be true, even if they seem to be at variance with commonly known facts, decide which of the conclusions logically follow(s) from the statements.

**Statements:**

All bottles are cups.

All cups are plates.

Some plates are tables.

**Conclusions:**

I Some cups are bottles.

II Some plates are cups.

III Some tables are plates.

- Ans**
- 1. Both conclusions II and III follow.
  - 2. Both conclusions I and II follow.
  - 3. All conclusions follow.
  - 4. Both conclusions I and III follow.

Question ID : 26433074630

Status : Answered

Chosen Option : 3

**Q.13** Which two signs should be interchanged to make the below equation mathematically correct?

$$42 + 14 \div 28 \times 98 - 14 = 105$$

- Ans**
- 1.  $\div$  and  $-$
  - 2.  $-$  and  $+$
  - 3.  $\times$  and  $\div$
  - 4.  $+$  and  $\times$

Question ID : 264330117541

Status : Answered

Chosen Option : 4

**Q.14** Which option represents the correct order of the given words as they would appear in the English dictionary?

1 Straight

2 Strict

3 Stamp

4 Sticker

5 Streaming

- Ans**
- 1. 3,5,4,1,2
  - 2. 4,5,2,3,1
  - 3. 3,4,1,5,2
  - 4. 4,3,1,5,2

Question ID : 26433069270

Status : Answered

Chosen Option : 3

Q.15 Eight colleagues A, B, C, D, E, F, G and H are sitting in a circle facing the centre, not necessarily in the same order. G sits third to the left of D. E is third to the left of G. H sits to the immediate right of D. B is second to the right of E. F is an immediate neighbour of E. F is third to the left of C. Who is sitting on the immediate left of D?

- Ans
- 1. C
  - 2. H
  - 3. E
  - 4. A

Question ID : 26433079055  
Status : Answered  
Chosen Option : 4

Q.16 Select the option that is related to the third word in the same way as the second word is related to the first word.  
(The words must be considered as meaningful English words and must not be related to each other based on the number of letters / number of consonants / vowels in the word)

Rat : Rodent :: Crocodile : ?

- Ans
- 1. Mammal
  - 2. Herbivorous
  - 3. Reptile
  - 4. Water

Question ID : 26433082576  
Status : Answered  
Chosen Option : 3

Q.17 In a certain language, ADVICE is written as VDAECI and BELONG is written as LEBGNO. How will BETTER be written in the same language?

- Ans
- 1. RETTEB
  - 2. CFUUFS
  - 3. TEBRET
  - 4. YVGGVI

Question ID : 26433074589  
Status : Answered  
Chosen Option : 3

Q.18 G + H means 'G is the sister of H'  
G × H means 'G is the father of H'  
G ÷ H means 'G is the son of H'  
G - H means 'G is the daughter of H'  
If P - J + D ÷ S, then how is J related to S?

- Ans
- 1. Maternal aunt
  - 2. Brother
  - 3. Paternal aunt
  - 4. Daughter

Question ID : 26433080431  
Status : Answered  
Chosen Option : 4

Q.19 Six friends (Aman, Biplab, Chirantan, Divya, Elizabeth and Firoz) are sitting around a circular table facing the centre. Aman sits third to the left of Biplab. Chirantan is an immediate neighbour of Aman. Elizabeth sits second to the right of Divya. Chirantan is not an immediate neighbour of Divya. Who sit between Aman and Biplab from the left of Aman?

- Ans
- 1. Firoz and Elizabeth
  - 2. Divya and Chirantan
  - 3. Firoz and Divya
  - 4. Chirantan and Elizabeth

Question ID : 26433092772  
Status : Answered  
Chosen Option : 4

Q.20 Which of the following letter-clusters will replace the question mark (?) in the given series?  
GPQU, FQRT, ?, DSTR, CTUQ

- Ans
- 1. ERSS
  - 2. ERRS
  - 3. FQSS
  - 4. EQRS

Question ID : 26433076445  
Status : Answered  
Chosen Option : 1

Section : Part-B-General Knowledge and General awareness

Q.1 The famous Nauchandi Fair happens once a year in the state of \_\_\_\_\_.

- Ans
- 1. Tamil Nadu
  - 2. Madhya Pradesh
  - 3. Uttar Pradesh
  - 4. Kerala

Question ID : 264330115087  
Status : Answered  
Chosen Option : 3

Q.2 As per November 2022, who is the Chief Economic Advisor of India?

- Ans
- 1. Krishnamurthy Subramanian
  - 2. Balwant Rai Mehta
  - 3. V. Anantha Nageswaran
  - 4. Surender Singh

Question ID : 264330114901  
Status : Marked For Review  
Chosen Option : 2



**Q.3 Who was the Prime Minister during the Eighth Five Year Plan?**

- Ans  1. P. V. Narsimha Rao  
 2. Manmohan Singh  
 3. Narendra Modi  
 4. L K Advani

Question ID : 264330116129  
Status : Answered  
Chosen Option : 3

**Q.4 Who sworn in as the 49th Chief Justice of India in August 2022?**

- Ans  1. Nuthalapati Venkata Ramana  
 2. Ranjan Gogoi  
 3. Sharad Arvind Bobde  
 4. Uday Umesh Lalit

Question ID : 264330115031  
Status : Not Answered  
Chosen Option : --

**Q.5 Jatin Ghoswami won numerous awards for his contribution in which dance form?**

- Ans  1. Odissi  
 2. Kuchipudi  
 3. Bharatnatyam  
 4. Sattriya

Question ID : 264330115830  
Status : Not Answered  
Chosen Option : --

**Q.6 Development of \_\_\_\_\_ was the motto of the first five year plan in India.**

- Ans  1. rivers  
 2. buildings  
 3. agriculture  
 4. architecture

Question ID : 264330115367  
Status : Answered  
Chosen Option : 3

**Q.7 Which among the following metals has the highest electrical conductivity?**

- Ans  1. Lithium  
 2. Silver  
 3. Platinum  
 4. Gold

Question ID : 264330115149  
Status : Answered  
Chosen Option : 2

**Q.8 Who among the following lit the Olympic cauldron in the Summer Olympics 2020?**

- Ans  1. Vanderlei Cordeiro de Lima  
 2. Jordan Duckitt  
 3. Naomi Osaka  
 4. Dinigeer Yilamujiang

Question ID : 264330115950  
Status : Not Answered  
Chosen Option : --

**Q.9 Swachh Bharat Mission was launched to fulfil the vision of a cleaner India by \_\_\_\_\_.**

- Ans  1. October 2,2015  
 2. October 2,2018  
 3. October 2,2017  
 4. October 2,2019

Question ID : 264330116176  
Status : Not Answered  
Chosen Option : --

**Q.10 What is the minimum age requirement to be elected as President of India?**

- Ans  1. 35 years  
 2. 34 years  
 3. 25 years  
 4. 30 years

Question ID : 26433074902  
Status : Answered  
Chosen Option : 1

**Q.11 The football club Mohun Bagan was founded in which year?**

- Ans  1. 1892  
 2. 1889  
 3. 1873  
 4. 1878

Question ID : 264330116292  
Status : Not Answered  
Chosen Option : --

**Q.12 The fundamental duties in the Indian Constitution are taken from which country's Constitution?**

- Ans  1. USA  
 2. Canada  
 3. USSR (now Russia)  
 4. France

Question ID : 26433090664  
Status : Marked For Review  
Chosen Option : 1

Q.13 Which of the following is an exclusive martial dance form of Manipur?

- Ans
- 1. Bihu
  - 2. Kummi
  - 3. Thang Ta
  - 4. Danda-Jatra

Question ID : 26433072926  
Status : Not Answered  
Chosen Option : --

Q.14 Neonatal mortality rate refers to the number of deaths during the first \_\_\_\_\_ of life per 1000 live births in a given year or other period.

- Ans
- 1. 28 days
  - 2. 27 days
  - 3. 26 days
  - 4. 25 days

Question ID : 264330116039  
Status : Not Answered  
Chosen Option : --

Q.15 Which of the following comes under Mollusca?

- Ans
- 1. Turtle
  - 2. Musca
  - 3. Sting ray
  - 4. Octopus

Question ID : 264330115213  
Status : Not Answered  
Chosen Option : --

Q.16 Identify the only natural satellite of Earth.

- Ans
- 1. Callisto
  - 2. Io
  - 3. Titan
  - 4. Moon

Question ID : 26433091490  
Status : Answered  
Chosen Option : 4

Q.17 \_\_\_\_\_ are things a firm owns.

- Ans
- 1. Debentures
  - 2. Assets
  - 3. Liabilities
  - 4. Loan

Question ID : 264330115328  
Status : Answered  
Chosen Option : 2

Q.18 General Dyer took command during the martial law in which year?

- Ans
- 1. 1945
  - 2. 1819
  - 3. 1919
  - 4. 1929

Question ID : 264330115718  
Status : Not Answered  
Chosen Option : --

Q.19 What helps in expanding trade and commerce and brings in foreign exchange?

- Ans
- 1. import of machines
  - 2. export of manufactured goods
  - 3. import of manufactured goods
  - 4. import of raw materials

Question ID : 264330115575  
Status : Answered  
Chosen Option : 2

Q.20 Which of the following archaeological sites is NOT located in present day India?

- Ans
- 1. Mahagara
  - 2. Chirand
  - 3. Hallur
  - 4. Mehrgarh

Question ID : 26433089123  
Status : Not Answered  
Chosen Option : --

Section : Part-C-Elementary Mathematics

Q.1 Simplify the given expression.

$$\frac{7\frac{13}{4} \div \frac{13}{5} \text{ of } \left(\frac{5}{52}\right)}{\frac{13}{11} \div \frac{15}{11} \text{ of } \left(\frac{14}{5}\right)}$$

- Ans
- 1.  $\frac{389}{14}$
  - 2.  $\frac{323}{13}$
  - 3.  $\frac{294}{13}$
  - 4.  $\frac{287}{13}$

Question ID : 26433075407  
Status : Answered  
Chosen Option : 3

**Q.2** A can run 1 km in 4 min, and B can cover the same distance in 4 min 10 sec. By what distance can A beat B in a 1 km race?

- Ans  1. 45 m  
 2. 40 m  
 3. 35 m  
 4. 30 m

Question ID : 26433073042  
Status : Answered  
Chosen Option : 2

**Q.3** A sum of money doubles itself at compound interest in 10 years. In how many years will it be four times at the same rate of interest?

- Ans  1. 10  
 2. 20  
 3. 15  
 4. 5

Question ID : 26433076380  
Status : Answered  
Chosen Option : 3

**Q.4** The marked price of a chair was Rs.5,000. The shopkeeper was offering a discount of 20%, but on further bargaining agreed to offer a successive discount and finally sold the chair for Rs.3,600. What was the second discount offered by the shopkeeper?

- Ans  1. 12%  
 2. 10%  
 3. 11%  
 4. 9%

Question ID : 26433080361  
Status : Answered  
Chosen Option : 2

**Q.5** If 90 is divided into two parts in the ratio of 2:3, then what are the values of two parts?

- Ans  1. 50 and 40  
 2. 36 and 54  
 3. 42 and 48  
 4. 40 and 50

Question ID : 26433075663  
Status : Answered  
Chosen Option : 2

Q.6 The weight of five boys is recorded as 22.450 kg, 24.150 kg, 24.720 kg, 28.530 kg and 25.150 kg. What is the average weight of all the five boys?

- Ans
- 1. 29 kg
  - 2. 27 kg
  - 3. 25 kg
  - 4. 26 kg

Question ID : 26433076392  
Status : Answered  
Chosen Option : 3

Q.7 A bus covered a distance of 72 km in 60 min. What is the speed of the bus in km/h?

- Ans
- 1. 91
  - 2. 56
  - 3. 84
  - 4. 72

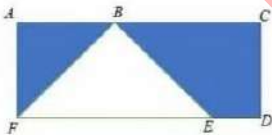
Question ID : 26433080003  
Status : Answered  
Chosen Option : 4

Q.8 A hemisphere of lead of radius 5 cm is cast into a right circular cone of height 75 cm. If the volume of cone and hemisphere are equal, then what will be the radius of the base of the cone?

- Ans
- 1. 1.8 cm
  - 2. 1.4 cm
  - 3. 1.5 cm
  - 4. 1.2 cm

Question ID : 26433075419  
Status : Answered  
Chosen Option : 1

Q.9 Find the area of the shaded region of the diagram, where ACDF is a rectangle, AC = 90 cm, AF = CD = 20 cm and ED = 10 cm.



- Ans
- 1. 1000 cm<sup>2</sup>
  - 2. 1400 cm<sup>2</sup>
  - 3. 1200 cm<sup>2</sup>
  - 4. 1100 cm<sup>2</sup>

Question ID : 26433075745  
Status : Answered  
Chosen Option : 1

Q.10 A man spends 31% and 9% of his monthly income on food and clothing, respectively, and one third of the remaining on the education of children. He saves ₹4,500 per month, which is equal to half the balance after spending on food, clothing and education of children. His monthly salary is:

- Ans
- 1. ₹21,000
  - 2. ₹22,500
  - 3. ₹20,650
  - 4. ₹26,700

Question ID : 26433082793  
Status : Answered  
Chosen Option : 2

Q.11 A, B, and C start running simultaneously, starting from a point, around a circular track of length 900m, with respective speeds of 3m/s, 5m/s, and 6m/s. A and B run in the same direction while C runs in the opposite direction of the other two. After how much time will they meet for the first time?

- Ans
- 1. 12 minutes
  - 2. 13 minutes
  - 3. 14 minutes
  - 4. 15 minutes

Question ID : 26433063960  
Status : Not Attempted and Marked For Review  
Chosen Option : --

Q.12 A certain sum of money becomes  $\frac{216}{125}$  times of itself in 3 years at compound interest, compounded annually. What is the rate of interest?

- Ans
- 1. 40 percent
  - 2. 20 percent
  - 3. 10 percent
  - 4. 30 percent

Question ID : 26433079878  
Status : Answered  
Chosen Option : 2

Q.13 A lady professes to sell sugar at 20% profit on the cost price and using a weight which is 30% less than the actual measure. What is her gain percentage?

Ans

1.  $67\frac{3}{7}$  percent

2.  $71\frac{3}{7}$  percent

3.  $81\frac{2}{7}$  percent

4.  $57\frac{1}{7}$  percent

Question ID : 26433079863

Status : Answered

Chosen Option : 2

Q.14 The difference between two numbers is 1086. When we divide the larger number by the smaller we get six as quotient and six as remainder. Find the larger number.

Ans  1. 1402

2. 1302

3. 1502

4. 1202

Question ID : 26433081535

Status : Answered

Chosen Option : 2

Q.15 After getting two successive discounts Rupa got a dress at Rs. 1619.20, whose marked price is Rs. 2000. If the second discount is 8 percent, then the first discount is:

Ans  1. 10 percent

2. 6 percent

3. 12 percent

4. 15 percent

Question ID : 264330116745

Status : Answered

Chosen Option : 3



Q.16

If  $p : q = 1 : 2$ , what is the value of  $\frac{2p + 3q}{4p + 5q}$  ?

Ans

1.  $\frac{7}{4}$

2.  $\frac{5}{3}$

3.  $\frac{4}{7}$

4.  $\frac{3}{5}$

Question ID : 26433080324

Status : Answered

Chosen Option : 3

Q.17 A and B together can do a piece of work in 20 days, and B and C together can do the same work in 100 days. If B alone can do the same work in 140 days, then in how many days will A and C together can complete the same work?

Ans  1. 125/8 days

2. 175/8 days

3. 111/3 days

4. 145/6 days

Question ID : 264330116860

Status : Answered

Chosen Option : 2

Q.18 A can do a piece of work in 4 days, while B can do it in 8 days. If they work on alternate days beginning with A, then in how many days will the work be completed?

Ans  1. 3

2. 4

3. 3.5

4. 5

Question ID : 26433075204

Status : Answered

Chosen Option : 4

Q.19 If a diamond ring is sold for ₹5,94,320, then a woman will get a loss of 5%. At what price should she sell it so that her profit becomes 25%?

Ans  1. ₹7,32,140

2. ₹7,42,800

3. ₹7,52,010

4. ₹7,82,000

Question ID : 26433076076

Status : Answered

Chosen Option : 4

**Q.20** In a panchayat election, there were two candidates A and B. Candidate A got 42% of the votes and lost to B by 8000 votes. What is the total number of votes?

- Ans
- 1. 30000
  - 2. 3000
  - 3. 5000
  - 4. 50000

Question ID : 26433081014  
Status : Answered  
Chosen Option : 4

Section : Part-D-English

**Q.1** Select the correct word for the blanks in the given sentence.

My father loves to read a \_\_\_\_\_ and wants to \_\_\_\_\_ flight tickets for Delhi.

- Ans
- 1. reserve
  - 2. notepad
  - 3. book
  - 4. purchase

Question ID : 26433060532  
Status : Answered  
Chosen Option : 3

**Q.2** Select the most appropriate ANTONYM of the given word.

Doleful

- Ans
- 1. Joyous
  - 2. Worthless
  - 3. Horrid
  - 4. Dismal

Question ID : 26433071980  
Status : Answered  
Chosen Option : 1

**Q.3** Select the correct spelling of the underlined word in the following sentence.

In edition to snacks, please bring cold drinks.

- Ans
- 1. adition
  - 2. addition
  - 3. eddition
  - 4. audition

Question ID : 26433072370  
Status : Answered  
Chosen Option : 2

**Q.4** Select the most appropriate synonym of the given word.  
**Despise**

- Ans**
- 1. Treasure
  - 2. Desire
  - 3. Dislike
  - 4. Like

Question ID : 26433086488  
Status : **Marked For Review**  
Chosen Option : 1

**Q.5** Select the most appropriate option that can substitute the underlined segment in the given sentence.

Does it difficult to drive a lorry through a crowded narrow lane?

- Ans**
- 1. Aren't it
  - 2. Do it
  - 3. Isn't it
  - 4. Would it

Question ID : 26433088988  
Status : **Answered**  
Chosen Option : 3

**Q.6** Select the most appropriate meaning of the given idiom.

**In the blink of an eye**

- Ans**
- 1. Happen fast and instantaneously
  - 2. To make progress
  - 3. To flourish
  - 4. To allow someone to move fast

Question ID : 26433072678  
Status : **Answered**  
Chosen Option : 1

**Q.7** Select the most appropriate option to fill in the blank.

The teacher \_\_\_\_\_ another picture in the slide to explain his point of view.

- Ans**
- 1. excluded
  - 2. extracted
  - 3. inserted
  - 4. obtained

Question ID : 26433074066  
Status : **Answered**  
Chosen Option : 3

**Q.8** Select the most appropriate meaning of the given idiom.

**An arm and a leg**

- Ans**  1. Too much bothering  
 2. Very expensive  
 3. Too much criticism  
 4. Willing to work

Question ID : 26433073713  
Status : Answered  
Chosen Option : 2

**Q.9** Select the INCORRECTLY spelt word.

- Ans**  1. Seceade  
 2. Seismic  
 3. Relevance  
 4. Titillate

Question ID : 26433073603  
Status : Marked For Review  
Chosen Option : 4

**Q.10** Select the most appropriate option to fill in the blank.

One day, an old man was walking through the forest \_\_\_\_\_ suddenly he heard someone crying for help.

- Ans**  1. which  
 2. when  
 3. while  
 4. than

Question ID : 26433072730  
Status : Answered  
Chosen Option : 2

**Q.11** Select the most appropriate synonym of the given word.

**Annoy**

- Ans**  1. Irritate  
 2. Testify  
 3. Suppress  
 4. Delight

Question ID : 26433073429  
Status : Answered  
Chosen Option : 1

Q.12 Parts of the following sentence have been underlined and given as options. Select the option that contains an error.

Tomorrow in the exam hall, I am busy writing answers.

- Ans
- 1. writing
  - 2. am
  - 3. busy
  - 4. answers

Question ID : 26433089366  
Status : Answered  
Chosen Option : 2

Q.13 Select the correct option to substitute the underlined segment in the given sentence.  
Ever since young, we were taught that we can obey our elders.

- Ans
- 1. should
  - 2. cannot
  - 3. May
  - 4. need not

Question ID : 26433092996  
Status : Answered  
Chosen Option : 1

Q.14 Select the most appropriate homonym to fill in the blank.

Due to the attack his vital organs \_\_\_\_\_ functioning.

- Ans
- 1. seized
  - 2. sized
  - 3. ceased
  - 4. seas

Question ID : 26433089071  
Status : Answered  
Chosen Option : 1

Q.15 Select the most appropriate ANTONYM of the given word.

Cynical

- Ans
- 1. Negligent
  - 2. Silent
  - 3. Optimistic
  - 4. Usurper

Question ID : 26433071969  
Status : Answered  
Chosen Option : 3

**Comprehension:**

In the following passage, some words have been deleted. Read the passage carefully and select the most appropriate option to fill in each blank.

Mirrors (1) \_\_\_\_\_ used since ages. It is said that Archimedes used huge mirrors to focus the heat of the sun's rays on enemy ships to burn them. The same (2) \_\_\_\_\_ is used in solar cookers, where mirrors are used to reflect and focus the sun's rays onto cooking containers. Astronomers use huge concave mirrors to focus starlight. The mirrors used in telescopes are polished by giving a thin coat of silver or aluminium to the glass. With the telescopes, astronomers can see the heavenly bodies, but even without the telescopes one can see the moon. A full moon shining (3) \_\_\_\_\_ is a beautiful sight. But it is also a puzzle, because if the sun and the moon both give the same light, then why is the moonlight more pleasant? The reason is that the moon reflects very (4) \_\_\_\_\_ sunlight, in fact, only seven per cent of the light it receives. The earth reflects about half of the radiation that it receives from the sun. Imagine how bright the earth must be looking from the moon! One can even read a book on the moon in the earthlight. However, you do not have to travel all the way to the moon to realise how strong the earth's light is. Observe the crescent moon soon after the new moon. The bright crescent is illuminated by the sun. The rest of the moon is illuminated by earthlight. In other words, the light reflected by the earth is falling on the moon. This is being reflected back to us and is strong enough to show the moon (5) \_\_\_\_\_. As the crescent increases in size, this effect disappears.

**SubQuestion No : 16**

**Q.16** Select the most appropriate option to fill in blank number 1.

- Ans  1. has been  
 2. is being  
 3. have been  
 4. are

Question ID : 26433060972

Status : Marked For Review

Chosen Option : 3

**Comprehension:**

In the following passage, some words have been deleted. Read the passage carefully and select the most appropriate option to fill in each blank.

Mirrors (1) \_\_\_\_\_ used since ages. It is said that Archimedes used huge mirrors to focus the heat of the sun's rays on enemy ships to burn them. The same (2) \_\_\_\_\_ is used in solar cookers, where mirrors are used to reflect and focus the sun's rays onto cooking containers. Astronomers use huge concave mirrors to focus starlight. The mirrors used in telescopes are polished by giving a thin coat of silver or aluminium to the glass. With the telescopes, astronomers can see the heavenly bodies, but even without the telescopes one can see the moon. A full moon shining (3) \_\_\_\_\_ is a beautiful sight. But it is also a puzzle, because if the sun and the moon both give the same light, then why is the moonlight more pleasant? The reason is that the moon reflects very (4) \_\_\_\_\_ sunlight, in fact, only seven per cent of the light it receives. The earth reflects about half of the radiation that it receives from the sun. Imagine how bright the earth must be looking from the moon! One can even read a book on the moon in the earthlight. However, you do not have to travel all the way to the moon to realise how strong the earth's light is. Observe the crescent moon soon after the new moon. The bright crescent is illuminated by the sun. The rest of the moon is illuminated by earthlight. In other words, the light reflected by the earth is falling on the moon. This is being reflected back to us and is strong enough to show the moon (5) \_\_\_\_\_. As the crescent increases in size, this effect disappears.

**SubQuestion No : 17**

**Q.17** Select the most appropriate option to fill in blank number 2.

- Ans  1. verity  
 2. principle  
 3. supposition  
 4. moral

Question ID : 26433060973

Status : Answered

Chosen Option : 2

**Comprehension:**

In the following passage, some words have been deleted. Read the passage carefully and select the most appropriate option to fill in each blank.

Mirrors (1) \_\_\_\_\_ used since ages. It is said that Archimedes used huge mirrors to focus the heat of the sun's rays on enemy ships to burn them. The same (2) \_\_\_\_\_ is used in solar cookers, where mirrors are used to reflect and focus the sun's rays onto cooking containers. Astronomers use huge concave mirrors to focus starlight. The mirrors used in telescopes are polished by giving a thin coat of silver or aluminium to the glass. With the telescopes, astronomers can see the heavenly bodies, but even without the telescopes one can see the moon. A full moon shining (3) \_\_\_\_\_ is a beautiful sight. But it is also a puzzle, because if the sun and the moon both give the same light, then why is the moonlight more pleasant? The reason is that the moon reflects very (4) \_\_\_\_\_ sunlight, in fact, only seven per cent of the light it receives. The earth reflects about half of the radiation that it receives from the sun. Imagine how bright the earth must be looking from the moon! One can even read a book on the moon in the earthlight. However, you do not have to travel all the way to the moon to realise how strong the earth's light is. Observe the crescent moon soon after the new moon. The bright crescent is illuminated by the sun. The rest of the moon is illuminated by earthlight. In other words, the light reflected by the earth is falling on the moon. This is being reflected back to us and is strong enough to show the moon (5) \_\_\_\_\_. As the crescent increases in size, this effect disappears.

**SubQuestion No : 18**

**Q.18** Select the most appropriate option to fill in blank number 3.

- Ans  1. beneath  
 2. overhead  
 3. ahead  
 4. upward

Question ID : 26433060974

Status : **Marked For Review**

Chosen Option : 3



**Comprehension:**

In the following passage, some words have been deleted. Read the passage carefully and select the most appropriate option to fill in each blank.

Mirrors (1) \_\_\_\_\_ used since ages. It is said that Archimedes used huge mirrors to focus the heat of the sun's rays on enemy ships to burn them. The same (2) \_\_\_\_\_ is used in solar cookers, where mirrors are used to reflect and focus the sun's rays onto cooking containers. Astronomers use huge concave mirrors to focus starlight. The mirrors used in telescopes are polished by giving a thin coat of silver or aluminium to the glass. With the telescopes, astronomers can see the heavenly bodies, but even without the telescopes one can see the moon. A full moon shining (3) \_\_\_\_\_ is a beautiful sight. But it is also a puzzle, because if the sun and the moon both give the same light, then why is the moonlight more pleasant? The reason is that the moon reflects very (4) \_\_\_\_\_ sunlight, in fact, only seven per cent of the light it receives. The earth reflects about half of the radiation that it receives from the sun. Imagine how bright the earth must be looking from the moon! One can even read a book on the moon in the earthlight. However, you do not have to travel all the way to the moon to realise how strong the earth's light is. Observe the crescent moon soon after the new moon. The bright crescent is illuminated by the sun. The rest of the moon is illuminated by earthlight. In other words, the light reflected by the earth is falling on the moon. This is being reflected back to us and is strong enough to show the moon (5) \_\_\_\_\_. As the crescent increases in size, this effect disappears.

**SubQuestion No : 19**

**Q.19** Select the most appropriate option to fill in blank number 4.

- Ans  1. minute  
 2. less  
 3. petty  
 4. little

Question ID : 26433060975

Status : Answered

Chosen Option : 2

**Comprehension:**

In the following passage, some words have been deleted. Read the passage carefully and select the most appropriate option to fill in each blank.

Mirrors (1) \_\_\_\_\_ used since ages. It is said that Archimedes used huge mirrors to focus the heat of the sun's rays on enemy ships to burn them. The same (2) \_\_\_\_\_ is used in solar cookers, where mirrors are used to reflect and focus the sun's rays onto cooking containers. Astronomers use huge concave mirrors to focus starlight. The mirrors used in telescopes are polished by giving a thin coat of silver or aluminium to the glass. With the telescopes, astronomers can see the heavenly bodies, but even without the telescopes one can see the moon. A full moon shining (3) \_\_\_\_\_ is a beautiful sight. But it is also a puzzle, because if the sun and the moon both give the same light, then why is the moonlight more pleasant? The reason is that the moon reflects very (4) \_\_\_\_\_ sunlight, in fact, only seven per cent of the light it receives. The earth reflects about half of the radiation that it receives from the sun. Imagine how bright the earth must be looking from the moon! One can even read a book on the moon in the earthlight. However, you do not have to travel all the way to the moon to realise how strong the earth's light is. Observe the crescent moon soon after the new moon. The bright crescent is illuminated by the sun. The rest of the moon is illuminated by earthlight. In other words, the light reflected by the earth is falling on the moon. This is being reflected back to us and is strong enough to show the moon (5) \_\_\_\_\_. As the crescent increases in size, this effect disappears.

SubQuestion No : 20

Q.20 Select the most appropriate option to fill in blank number 5.

- Ans  1. lowly  
 2. faintly  
 3. gloomily  
 4. feebly

Question ID : 26433060976

Status : Marked For Review

Chosen Option : 3

Section : Part-D-Hindi

Q.1 निम्नलिखित वाक्य के किस खंड में त्रुटि है?  
सूर्य पूर्व पर उगता है।

- Ans  1. पूर्व  
 2. पर  
 3. उगता  
 4. सूर्य

Question ID : 26433066759

Status : Not Answered

Chosen Option : --

Q.2 निम्नलिखित वाक्य के रिक्त स्थान में सबसे उपयुक्त मुहावरा क्या होगा?  
'राहुल अपनी माँ की \_\_\_\_\_ है।'

- Ans  1. गाल बजाना  
 2. ईद का चाँद  
 3. अंधे की लाठी  
 4. अक्ल का दुश्मन

Question ID : 26433066721

Status : Not Answered

Chosen Option : --

Q.3 निम्नलिखित वाक्य के किस शब्द में अशुद्धि है?  
अत्यधिक कार्य स्वास्थ्य को बिगाड़ देता है।

- Ans
- 1. कार्य
  - 2. अत्यधिक
  - 3. स्वास्थ्य
  - 4. बिगाड़

Question ID : 26433066765  
Status : Not Answered  
Chosen Option : --

Q.4 निम्न वाक्य में रेखांकित मुहावरे का उपयुक्त अर्थ दिए गए विकल्पों में से चुनिए।  
उसके शोक तो देखो, सींग कटाकर बछड़ों में मिल रहा है।

- Ans
- 1. नुकसान उठाकर लाभ की प्रतीक्षा
  - 2. हानि करके लाभ की योजना बनाना
  - 3. ग़लत काम करके छिपना
  - 4. बूढ़ा होकर बच्चों जैसा काम करना

Question ID : 26433062310  
Status : Not Answered  
Chosen Option : --

Q.5 विकल्पों में दिए गए किस वाक्य में निम्न शब्द के सही विलोम शब्द का उपयोग हुआ है?  
अपमान

- Ans
- 1. मुझे कार्यालय में बहुत मर्यादित किया गया।
  - 2. मुझे कार्यालय में बहुत अनादर मिला।
  - 3. मुझे कार्यालय में बहुत सम्मान मिला।
  - 4. मुझे बहुत सामान मिला।

Question ID : 26433066945  
Status : Not Answered  
Chosen Option : --

Q.6 'अचला नदी में पानी भरने गयी।'।  
उपरोक्त वाक्य में कारक सम्बन्धी त्रुटि पहचानकर निम्नलिखित में से शुद्ध वाक्य का चयन कीजिए।

- Ans
- 1. अचला नदी ने पानी भरने गयी।
  - 2. अचला नदी को पानी भरने गयी।
  - 3. अचला नदी से पानी भरने गयी।
  - 4. अचला नदी के लिए पानी भरने गयी।

Question ID : 26433066970  
Status : Not Answered  
Chosen Option : --

Q.7 'रमेश घर आया।' इस वाक्य का संदिग्ध भूतकाल में रूपांतरण होगा -

- Ans  1. रमेश घर आ रहा था।  
 2. रमेश घर आ गया होगा।  
 3. रमेश घर आया था।  
 4. रमेश घर आएगा।

Question ID : 26433062320  
Status : Not Answered  
Chosen Option : --

Q.8 'अंडे से जन्म लेने वाला' वाक्यांश के लिए एक शब्द क्या होगा?

- Ans  1. अंडक  
 2. अंडज  
 3. अंडाणु  
 4. जलज

Question ID : 26433065855  
Status : Not Answered  
Chosen Option : --

Q.9 'धन से सम्बन्ध रखने वाला' वाक्यांश के लिए उचित शब्द क्या होगा?

- Ans  1. आर्थिक  
 2. मूल्यवान  
 3. कीमती  
 4. मालिक

Question ID : 26433065911  
Status : Not Answered  
Chosen Option : --

Q.10 निम्नलिखित विकल्पों में से 'पृथ्वी से सम्बन्ध रखने वाला' वाक्यांश के लिए एक सार्थक शब्द क्या होगा ?

- Ans  1. सार्थक  
 2. निरर्थक  
 3. पार्थिव  
 4. अपार्थिव

Question ID : 26433062539  
Status : Not Answered  
Chosen Option : --

Q.11 निम्नलिखित वाक्य में रेखांकित खंड के स्थान पर प्रयुक्त होने वाले सबसे उपयुक्त विकल्प का चयन कीजिए।

विकास और आकाश एक ढाबे पर खाना खाता है।

- Ans
- 1. खा चुके
  - 2. पाता
  - 3. खाते
  - 4. खाती

Question ID : 26433079665  
Status : Not Answered  
Chosen Option : --

Q.12 निम्नलिखित में से कौन सा एक अनेकार्थी शब्द नहीं है?

- Ans
- 1. बुद्धि
  - 2. मुद्रा
  - 3. गुरु
  - 4. राशि

Question ID : 26433091318  
Status : Not Answered  
Chosen Option : --

Q.13 'माँ ने पुत्र को अंक में ले लिया।' इस वाक्य में प्रयुक्त 'अंक' शब्द निम्न में से किस अर्थ को व्यक्त करता है?

- Ans
- 1. गोद
  - 2. आँख
  - 3. गिनती के अंक
  - 4. संख्या

Question ID : 26433080912  
Status : Not Answered  
Chosen Option : --

Q.14 किसी संज्ञा या सर्वनाम शब्द की विशेषता बताने वाले शब्द क्या कहलाते हैं?

- Ans
- 1. क्रिया
  - 2. क्रिया विशेषण
  - 3. समुच्चयबोधक
  - 4. विशेषण

Question ID : 26433085049  
Status : Not Answered  
Chosen Option : --

Q.15 'हिमाद्रि' का उपयुक्त पर्यायवाची शब्द क्या है?

- Ans
- 1. पर्वत
  - 2. शैल
  - 3. हिमालय
  - 4. हिम

Question ID : 26433091170

Status : Not Answered

Chosen Option : --

**Comprehension:**

निम्नलिखित गद्यांश में कुछ शब्दों को हटा दिया गया है। दिए गए विकल्पों की सहायता से रिक्त स्थानों की पूर्ति कीजिए। प्रत्येक संख्या के लिए सबसे उपयुक्त विकल्प का चयन कीजिए।  
मनुष्य एक 1. \_\_\_\_\_ प्राणी है। इसका अर्थ है की वह 2. \_\_\_\_\_ जिए और दूसरों को भी जीने दे। वह अपने सुख दुःख के साथ दूसरों के सुख दुःख की ओर भी 3. \_\_\_\_\_ दे। अपने स्वार्थ को छोड़कर दूसरे के हित की भी सोचे। अपनी स्वार्थ सिद्धि करना 4. \_\_\_\_\_ नहीं है। 5. \_\_\_\_\_ ही सच्ची मानवता है।

SubQuestion No : 16

Q.16 रिक्त स्थान 1 की पूर्ति के लिए सबसे उपयुक्त विकल्प का चयन करें।

- Ans
- 1. साहित्यिक
  - 2. पौराणिक
  - 3. सामाजिक
  - 4. राजनीतिक

Question ID : 264330110903

Status : Not Answered

Chosen Option : --

**Comprehension:**

निम्नलिखित गद्यांश में कुछ शब्दों को हटा दिया गया है। दिए गए विकल्पों की सहायता से रिक्त स्थानों की पूर्ति कीजिए। प्रत्येक संख्या के लिए सबसे उपयुक्त विकल्प का चयन कीजिए।  
मनुष्य एक 1. \_\_\_\_\_ प्राणी है। इसका अर्थ है की वह 2. \_\_\_\_\_ जिए और दूसरों को भी जीने दे। वह अपने सुख दुःख के साथ दूसरों के सुख दुःख की ओर भी 3. \_\_\_\_\_ दे। अपने स्वार्थ को छोड़कर दूसरे के हित की भी सोचे। अपनी स्वार्थ सिद्धि करना 4. \_\_\_\_\_ नहीं है। 5. \_\_\_\_\_ ही सच्ची मानवता है।

SubQuestion No : 17

Q.17 रिक्त स्थान 2 की पूर्ति के लिए सबसे उपयुक्त विकल्प का चयन करें।

- Ans
- 1. स्वयं
  - 2. हम
  - 3. तुम
  - 4. अपने आप

Question ID : 264330110904

Status : Not Answered

Chosen Option : --

**Comprehension:**

निम्नलिखित गद्यांश में कुछ शब्दों को हटा दिया गया है। दिए गए विकल्पों की सहायता से रिक्त स्थानों की पूर्ति कीजिए। प्रत्येक संख्या के लिए सबसे उपयुक्त विकल्प का चयन कीजिए।  
मनुष्य एक 1. \_\_\_\_\_ प्राणी है। इसका अर्थ है कि वह 2. \_\_\_\_\_ लिए और दूसरों को भी जीने दे। वह अपने सुख दुःख के साथ दूसरों के सुख दुःख की ओर भी 3. \_\_\_\_\_ दे। अपने स्वार्थ को छोड़कर दूसरे के हित की भी सोचे। अपनी स्वार्थ सिद्धि करना 4. \_\_\_\_\_ नहीं है। 5. \_\_\_\_\_ ही सच्ची मानवता है।

**SubQuestion No : 18**

Q.18 रिक्त स्थान 3 की पूर्ति के लिए सबसे उपयुक्त विकल्प का चयन करें।

- Ans  1. ध्यान  
 2. नज़रंदाज़  
 3. अपमान  
 4. निरादर

Question ID : 264330110905

Status : Not Answered

Chosen Option : --

**Comprehension:**

निम्नलिखित गद्यांश में कुछ शब्दों को हटा दिया गया है। दिए गए विकल्पों की सहायता से रिक्त स्थानों की पूर्ति कीजिए। प्रत्येक संख्या के लिए सबसे उपयुक्त विकल्प का चयन कीजिए।  
मनुष्य एक 1. \_\_\_\_\_ प्राणी है। इसका अर्थ है कि वह 2. \_\_\_\_\_ लिए और दूसरों को भी जीने दे। वह अपने सुख दुःख के साथ दूसरों के सुख दुःख की ओर भी 3. \_\_\_\_\_ दे। अपने स्वार्थ को छोड़कर दूसरे के हित की भी सोचे। अपनी स्वार्थ सिद्धि करना 4. \_\_\_\_\_ नहीं है। 5. \_\_\_\_\_ ही सच्ची मानवता है।

**SubQuestion No : 19**

Q.19 रिक्त स्थान 4 की पूर्ति के लिए सबसे उपयुक्त विकल्प का चयन करें।

- Ans  1. दोस्ती  
 2. मानवता  
 3. अमानवीयता  
 4. मनवता

Question ID : 264330110906

Status : Not Answered

Chosen Option : --

**Comprehension:**

निम्नलिखित गद्यांश में कुछ शब्दों को हटा दिया गया है। दिए गए विकल्पों की सहायता से रिक्त स्थानों की पूर्ति कीजिए। प्रत्येक संख्या के लिए सबसे उपयुक्त विकल्प का चयन कीजिए।  
मनुष्य एक 1. \_\_\_\_\_ प्राणी है। इसका अर्थ है कि वह 2. \_\_\_\_\_ लिए और दूसरों को भी जीने दे। वह अपने सुख दुःख के साथ दूसरों के सुख दुःख की ओर भी 3. \_\_\_\_\_ दे। अपने स्वार्थ को छोड़कर दूसरे के हित की भी सोचे। अपनी स्वार्थ सिद्धि करना 4. \_\_\_\_\_ नहीं है। 5. \_\_\_\_\_ ही सच्ची मानवता है।

**SubQuestion No : 20**

Q.20 रिक्त स्थान 5 की पूर्ति के लिए सबसे उपयुक्त विकल्प का चयन करें।

- Ans  1. अपना हित  
 2. घर का हित  
 3. बच्चों का हित  
 4. परहित

Question ID : 264330110907

Status : Not Answered

Chosen Option : --

# Constable GD in CAPFs SSF Rifleman GD in Assam Rifles and Sepoy in NCB Examination 2022

Roll Number	<b>KD Job Updates</b>
Candidate Name	<b>KD Job Updates</b>
Venue Name	iON Digital Zone iDZ Ramireddipalle
Exam Date	17/01/2023
Exam Time	5:15 PM - 6:15 PM
Subject	Constable GD Examination 2022

Section : **Part-A-General Intelligence and Reasoning**

**Q.1** Which of the following numbers will replace the question mark (?) in the given series?

1248, 887, 598, 429, ?, 259, 234

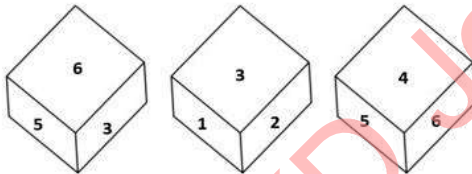
- Ans
- 1. 329
  - 2. 302
  - 3. 306
  - 4. 308

Question ID : **26433076754**

Status : **Not Attempted and Marked For Review**

Chosen Option : --

**Q.2** Three different positions of the same dice are shown. Find the number on the face opposite the face showing '4'.



- Ans
- 1. 2
  - 2. 1
  - 3. 3
  - 4. 6

Question ID : **26433082889**

Status : **Answered**

Chosen Option : 3



Q.3 Which of the mathematical signs should be interchanged in the below equation to make it mathematically correct?

$$72 - 12 + 8 \times 6 \div 24 = 30$$

- Ans
- 1. - and ÷
  - 2. - and +
  - 3. - and ×
  - 4. × and ÷

Question ID : 264330114174  
Status : Answered  
Chosen Option : 1

Q.4 Which option represents the correct order of the given words as they would appear in the English dictionary?

- 1 Brown
- 2 Brand
- 3 Brunch
- 4 Branch
- 5 Brimming

- Ans
- 1. 2,4,5,1,3
  - 2. 3,4,5,2,1
  - 3. 4,2,5,1,3
  - 4. 4,3,5,1,2

Question ID : 26433069257  
Status : Answered  
Chosen Option : 3

Q.5 Select the option that is related to the third word in the same way as the second word is related to the first word. (The words must be considered as meaningful English words and must not be related to each other based on the number of letters / number of consonants / vowels in the word.)

Uttar Pradesh : Lucknow :: Odisha : ?

- Ans
- 1. Gandhinagar
  - 2. Bhubaneswar
  - 3. Bengaluru
  - 4. Patna

Question ID : 26433081080  
Status : Answered  
Chosen Option : 2

Q.6 E – F means 'E is the mother of F'

E ÷ F means 'E is the father of F'

E + F means 'E is the sister of F'

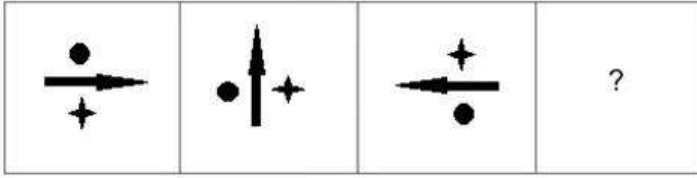
E × F means 'E is the brother of F'

If T × U ÷ D × C, then how is T related to C?

- Ans
- 1. Father's brother
  - 2. Brother
  - 3. Father
  - 4. Grandfather

Question ID : 26433080429  
Status : Answered  
Chosen Option : 1

Q.7 Select the figure that will replace the question mark (?) in the following figure series.




Ans


✗ 1.




✓ 2.



✗ 3.



✗ 4.



KD Job Updates

Question ID : 26433070419

Status : Answered

Chosen Option : 2

**Q.8** Select the set in which the numbers are related in the same way as are the numbers of the following sets.

(NOTE : Operations should be performed on the whole numbers, without breaking down the numbers into its constituent digits. E.g. 13 – Operations on 13 such as adding/subtracting/multiplying etc. to 13 can be performed. Breaking down 13 into 1 and 3 and then performing mathematical operations on 1 and 3 is not allowed)  
(8, 280, 5)  
(11, 308, 4)

- Ans
- 1. (6, 370, 9)
  - 2. (5, 270, 9)
  - 3. (13, 637, 7)
  - 4. (11, 440, 5)

Question ID : 26433076535

Status : **Not Attempted and Marked For Review**

Chosen Option : --

**Q.9** Six friends (Aman, Biplab, Chirantan, Divya, Elizabeth and Firoz) are sitting around a circular table facing the centre. Aman sits third to the left of Biplab. Chirantan is an immediate neighbour of Aman. Elizabeth sits second to the right of Divya. Chirantan is not an immediate neighbour of Divya. Who sits between Biplab and Firoz?

- Ans
- 1. Elizabeth
  - 2. Aman
  - 3. Chirantan
  - 4. Divya

Question ID : 26433092770

Status : **Not Attempted and Marked For Review**

Chosen Option : --

**Q.10** Select the option that is related to the fifth term in the same way as the second term is related to the first term and the fourth term is related to the third term.  
COURAGE : EQWTCIG :: POWER : RQYGT :: WISDOM : ?

- Ans
- 1. WISTIG
  - 2. FOQDOM
  - 3. YKUFQO
  - 4. EQWDOM

Question ID : 26433057687

Status : **Answered**

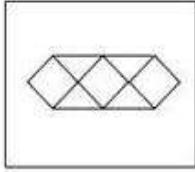
Chosen Option : 3

Q.11 Select the option figure in which the question figure is embedded (Rotation is not allowed).

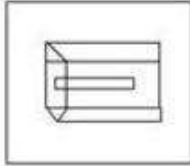


Ans

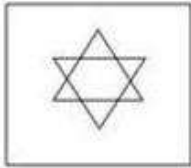
✗ 1.



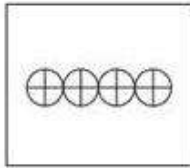
✓ 2.



✗ 3.



✗ 4.



Question ID : 26433070210  
Status : Answered  
Chosen Option : 2

Q.12 In a certain code language, 'TRIP' is coded as GIRK and 'FAST' is coded as UZHG. How will 'HOME' be coded in that language?

Ans ✓ 1. SLNV

✗ 2. GNLD

✗ 3. TMOW

✗ 4. FMKB

Question ID : 26433074513  
Status : Answered  
Chosen Option : 1

Q.13 In a certain code language, If BROTHER is coded as 14 and ACTIVE is coded as 12, how will CHOCOLATE be coded in that language?

Ans ✓ 1. 18

✗ 2. 16

✗ 3. 20

✗ 4. 15

Question ID : 26433068065  
Status : Answered  
Chosen Option : 1

Q.14 Which two signs should be interchanged to make the below equation mathematically correct?

$$26 - 13 + 39 \div 117 \times 24 = 31$$

- Ans
- 1.  $\times$  and  $\div$
  - 2.  $-$  and  $\times$
  - 3.  $+$  and  $\div$
  - 4.  $-$  and  $+$

Question ID : 264330117539  
Status : Answered  
Chosen Option : 4

Q.15 Which of the following letter-clusters will replace the question mark (?) in the given series?

BTWH, DRUJ, FPSL, ?, JLOP

- Ans
- 1. HNQN
  - 2. INPN
  - 3. HMPN
  - 4. HNPV

Question ID : 26433076443  
Status : Answered  
Chosen Option : 1

Q.16 Three Statements are given followed by Three conclusions numbered I, II and III.

Assuming the statements to be true, even if they seem to be at variance with commonly known facts, decide which of the conclusions logically follow(s) from the statements.

Statements:

All cats are rats.

Some rats are white.

All white are milk.

Conclusions:

I. Some rats are cats.

II. Some white are rats.

III. Some milk are white.

- Ans
- 1. Both conclusions I and II follow.
  - 2. Both conclusions I and III follow.
  - 3. Both conclusions II and III follow.
  - 4. All conclusions follow.

Question ID : 26433074633  
Status : Answered  
Chosen Option : 4

Q.17 Which number will replace the question mark (?) in the following series?  
24, 26, ?, 164, 658, 3292

- Ans  1. 54  
 2. 96  
 3. 72  
 4. 88

Question ID : 26433068969

Status : Not Attempted and  
Marked For Review

Chosen Option : --

Q.18 Six students are sitting around a circular table facing the centre. A sits to the immediate left of C. E sits third to the right of D. D is an immediate neighbour of C. B is an immediate neighbour of both E and F. Who sits second to the left of A?

- Ans  1. E  
 2. B  
 3. F  
 4. D

Question ID : 26433079503

Status : Answered

Chosen Option : 2

Q.19 Select the correct mirror image of the given figure when the mirror is placed at MN as shown below.

V e w Q A Z X 5

M  
|  
N

- Ans  1. 2 X Z A Q W e V  
 2. 5 X Z A Q W e V  
 3. 2 X Z A Q W e V  
 4. 5 X Z A Q W e V

Question ID : 26433080810

Status : Answered

Chosen Option : 3

**Q.20** Which of the following letters will replace the question mark (?) and complete the following letter series?  
F, P, X, D, H, ?

- Ans
- 1. H
  - 2. I
  - 3. J
  - 4. K

Question ID : 26433067276  
Status : Answered  
Chosen Option : 3

Section : Part-B-General Knowledge and General awareness

**Q.1** Which Five-year Plan focused on infrastructure development, that is, power and transport?

- Ans
- 1. First
  - 2. Fourth
  - 3. Second
  - 4. Third

Question ID : 26433064861  
Status : Not Answered  
Chosen Option : --

**Q.2** Which of the following is NOT an example of metamorphic rocks?

- Ans
- 1. Granite
  - 2. Quartzite
  - 3. Gneiss
  - 4. Schist

Question ID : 26433089662  
Status : Not Answered  
Chosen Option : --

**Q.3** Which of the following is not one of the five basic food groups suggested by the Indian Council of Medical Research?

- Ans
- 1. Milk and meat products
  - 2. Carbohydrates and Proteins
  - 3. Pulses and legumes
  - 4. Fats and sugars

Question ID : 264330115216  
Status : Not Answered  
Chosen Option : --

**Q.4** The Governor of State possesses the pardoning power under which Article of the Constitution of India?

- Ans
- 1. Article 163
  - 2. Article 161
  - 3. Article 55
  - 4. Article 145

Question ID : 26433074905  
Status : Not Answered  
Chosen Option : --

**Q.5** Mysuru Dasara Festival is a \_\_\_\_\_-day festival celebrated in Karnataka.

- Ans
- 1. 5
  - 2. 12
  - 3. 7
  - 4. 10

Question ID : 264330115079  
Status : Answered  
Chosen Option : 4

**Q.6** FIH Men's Hockey World Cup 2018 was organised by which country?

- Ans
- 1. Belgium
  - 2. Pakistan
  - 3. Spain
  - 4. India

Question ID : 26433086730  
Status : Not Answered  
Chosen Option : --

**Q.7** Raja Harishchandra, a movie directed by Dadasaheb Phalke in 1913, is considered as first full length film of \_\_\_\_\_.

- Ans
- 1. India
  - 2. Pakistan
  - 3. Bangladesh
  - 4. Nepal

Question ID : 264330115707  
Status : Answered  
Chosen Option : 1



**Q.8 Who among the following artists has won Padma Vibhushan Award in 2000?**

- Ans  1. Pandit Birju Maharaj  
 2. Kelucharan Mohapatra  
 3. Amala Akkineni  
 4. Jatin Goswami

Question ID : 264330115833  
Status : Not Answered  
Chosen Option : --

**Q.9 How many nations had participated in the Asian Games 2018?**

- Ans  1. 46  
 2. 45  
 3. 52  
 4. 50

Question ID : 264330115908  
Status : Not Answered  
Chosen Option : --

**Q.10 Which of the following is a fundamental duty?**

- Ans  1. To endanger public property and to abjure violence  
 2. To safeguard public property and to expose violence  
 3. To safeguard public property and to abjure violence  
 4. To safeguard public property and to accept violence

Question ID : 26433089952  
Status : Answered  
Chosen Option : 3

**Q.11 \_\_\_\_\_ substituted the planning commission in India.**

- Ans  1. Finance Commission  
 2. Securities and Exchange Board of India (SEBI)  
 3. Competition Commission of India (CCI)  
 4. National Institution for Transforming India (NITI Aayog)

Question ID : 264330115359  
Status : Answered  
Chosen Option : 4

**Q.12 Duralumin is an alloy made up of aluminium and \_\_\_\_\_.**

- Ans  1. nickel  
 2. tin  
 3. copper  
 4. zinc

Question ID : 264330115141  
Status : Not Answered  
Chosen Option : --

Q.13 N. Biren Singh became the chief minister of \_\_\_\_\_ state of India in March 2022.

- Ans
- 1. Nagaland
  - 2. Mizoram
  - 3. Assam
  - 4. Manipur

Question ID : 264330114893  
Status : Answered  
Chosen Option : 1

Q.14 Which among the following is the oldest vedas?

- Ans
- 1. Samaveda
  - 2. Yajurveda
  - 3. Atharvaveda
  - 4. Rigveda

Question ID : 264330115439  
Status : Answered  
Chosen Option : 4

Q.15 In which year was the first cement plant setup in India?

- Ans
- 1. 2004
  - 2. 2014
  - 3. 1974
  - 4. 1904

Question ID : 264330115573  
Status : Not Answered  
Chosen Option : --

Q.16 In which year was the National Population Policy (NPP), the central government's second population policy formulated in India?

- Ans
- 1. 2000
  - 2. 2005
  - 3. 2002
  - 4. 1998

Question ID : 264330116042  
Status : Not Answered  
Chosen Option : --

Q.17 In economics, CRR stands for \_\_\_\_\_.

- Ans
- 1. Cash Rate Ratio
  - 2. Cash Rationing Reserve
  - 3. Cash Reserve Ratio
  - 4. Capital Reserve Ratio

Question ID : 264330115326  
Status : Answered  
Chosen Option : 3

**Q.18** Sukanya Samridhi Yojana account can be opened by the parents of a girl child or legal guardians, any time before the girl child attains \_\_\_\_\_.

- Ans
- 1. 16 years of age
  - 2. 12 years of age
  - 3. 18 years of age
  - 4. 10 years of age

Question ID : 264330116179  
Status : Not Answered  
Chosen Option : --

**Q.19** Who has been appointed as India's Ambassador to Slovak Republic in October 2022?

- Ans
- 1. Apoorva Srivastava
  - 2. Taranjit Singh Sandhu
  - 3. Suchitra Durai
  - 4. Sibi George

Question ID : 264330115029  
Status : Not Answered  
Chosen Option : --

**Q.20** The folk dance 'Lambadi' is associated with which Indian state?

- Ans
- 1. Bihar
  - 2. Assam
  - 3. Karnataka
  - 4. Andhra Pradesh

Question ID : 26433072924  
Status : Answered  
Chosen Option : 4

Section : Part-C-Elementary Mathematics

**Q.1** On dividing a number by 42, we get 120 as the quotient and 0 as the remainder. On dividing the same number by 41, what will be the remainder?

- Ans
- 1. 38
  - 2. 39
  - 3. 37
  - 4. 40

Question ID : 26433075459  
Status : Answered  
Chosen Option : 1

Q.2 In a race around a circular track an athlete runs at 10 m/sec in the first round, at 20 m/sec in the second round and at 30 m/sec in the third round. Find his average speed (in m/sec) for the race. (correct to 2 decimal places)

- Ans
- 1. 15.15
  - 2. 16.67
  - 3. 16.36
  - 4. 15.56

Question ID : 26433079916  
Status : Answered  
Chosen Option : 3

Q.3 The effective annual rate of interest corresponding to a nominal rate of 2% per annum, payable half-yearly, is:

- Ans
- 1. 4.02%
  - 2. 2.01%
  - 3. 4.2%
  - 4. 2.1%

Question ID : 26433080126  
Status : Not Attempted and Marked For Review  
Chosen Option : --

Q.4 An equilateral triangle of side 6 cm has its corners cut-off to form a regular hexagon. What is the area of this regular hexagon?

- Ans
- 1.  $6 \text{ cm}^2$
  - 2.  $3\sqrt{3} \text{ cm}^2$
  - 3.  $6\sqrt{2} \text{ cm}^2$
  - 4.  $6\sqrt{3} \text{ cm}^2$

Question ID : 26433075279  
Status : Not Attempted and Marked For Review  
Chosen Option : --

Q.5 The value of  $\{(6 + 4) + (12 \div 4 \times 2)\} + 1\frac{1}{3} \times 9 \div 3 + 1\frac{2}{3}$  is:

- Ans
- 1.  $\frac{65}{3}$
  - 2.  $\frac{23}{3}$
  - 3.  $\frac{55}{3}$
  - 4.  $\frac{17}{3}$

Question ID : 26433075178  
Status : Answered  
Chosen Option : 1

Q.6 Three cubes of sides 5 cm, 4 cm and 3 cm are melted to form a new cube. Find the length of the diagonal of the new cube.

- Ans
- 1.  $3\sqrt{3}$  cm
  - 2.  $6\sqrt{3}$  cm
  - 3.  $2\sqrt{3}$  cm
  - 4.  $9\sqrt{3}$  cm

Question ID : 26433074946  
Status : Not Attempted and Marked For Review  
Chosen Option : --

Q.7 The selling price of 40 articles is equal to the cost price of 60 articles. Find the gain percentage.

- Ans
- 1. 40 percent
  - 2. 30 percent
  - 3. 50 percent
  - 4. 60 percent

Question ID : 26433079859  
Status : Answered  
Chosen Option : 3

Q.8 Ramesh borrowed some money and agreed to pay-off by paying Rs.4,565 at the end of the first year and Rs.6,534 at the end of the second year. If the rate of compound interest is 10% per annum, find the amount borrowed by Ramesh.

- Ans
- 1. Rs.9,550
  - 2. Rs.9,330
  - 3. Rs.9,440
  - 4. Rs.9,660

Question ID : 26433064991  
Status : Not Attempted and Marked For Review  
Chosen Option : --

**Q.9** Pankaj offers a cash discount of Rs.250 first and then two successive discounts of 8% and 5% on the sale of a chair. If the marked price of the chair is Rs.4,250, what is the final price of the chair for a customer after the given discount scheme?

- Ans  1. Rs.3,496  
 2. Rs.3,550  
 3. Rs.3,600  
 4. Rs.3,450

Question ID : 26433080318  
Status : Not Answered  
Chosen Option : --

**Q.10** The ages of A and B are in the ratio 5 : 8, respectively. After 8 years, the ratio of their ages will be 3 : 4. What is the sum of their present ages?

- Ans  1. 13 years  
 2. 39 years  
 3. 26 years  
 4. 52 years

Question ID : 26433075193  
Status : Answered  
Chosen Option : 3

**Q.11** In a 8000 m race around a circular stadium having a circumference of 2000 m, the fastest runner Rohan and the slowest runner Soham starting from the same point and reach the starting point together at the end of the 10th minute, for the first time after the start of the race. If Rohan runs at twice the speed of Soham, what is the time taken by Rohan to finish the race?

- Ans  1. 15 minutes  
 2. 10 minutes  
 3. 20 minutes  
 4. 25 minutes

Question ID : 26433073153  
Status : Not Answered  
Chosen Option : --

**Q.12** Three runners Aman, Ramesh and Naresh run a race, with Aman finishing 48 metres ahead of Ramesh and 68 metres ahead of Naresh. In another race of same length, Ramesh finishes 25 metres ahead of Naresh. Each runner travels the entire distance at a constant speed. Find the length of the race.

- Ans  1. 240 metres  
 2. 242 metres  
 3. 244 metres  
 4. 248 metres

Question ID : 26433065002  
Status : Not Answered  
Chosen Option : --

Q.13 The average of the first 16 natural numbers is:

Ans  1. 8.5

2. 7.3

3. 6.5

4. 9.7

Question ID : 26433074949

Status : Answered

Chosen Option : 1

Q.14 In an election, a candidate who gets 70% of the votes is elected by a majority of 500 votes. What is the total number of votes?

Ans  1. 1500

2. 500

3. 2100

4. 1250

Question ID : 26433073001

Status : Answered

Chosen Option : 4

Q.15 If 85% of  $(x - y) = 25\%$  of  $(x + y)$ , Then  $y$  is what percentage of  $x$ ?

Ans  1.  $51\frac{4}{11}\%$

2.  $54\frac{6}{11}\%$

3.  $55\frac{1}{11}\%$

4.  $58\frac{3}{11}\%$

Question ID : 26433076075

Status : Answered

Chosen Option : 2

Q.16 A person sells a packet on the cost price by using a faulty weight 10% less than the actual measure. What is his gain percentage?

Ans

✗ 1.  $12\frac{7}{9}\%$

✗ 2.  $13\frac{4}{9}\%$

✗ 3.  $15\frac{1}{9}\%$

✓ 4.  $11\frac{1}{9}\%$

Question ID : 26433076077

Status : Answered

Chosen Option : 4

Q.17 Riya can complete a piece of work in 12 days, Reeta in 18 days and Geeta in 24 days. Reeta and Geeta worked together for 6 days and then Geeta was replaced by Riya. In how many days altogether was the work completed?

Ans ✓ 1. 9 days

✗ 2. 12 day

✗ 3. 8 days

✗ 4. 17 days

Question ID : 26433065007

Status : Answered

Chosen Option : 1

Q.18 What is the correct descending order of the fractions  $\frac{7}{8}, \frac{13}{16}, \frac{31}{40}, \frac{63}{80}$ ?

Ans

✗ 1.  $\frac{7}{8} > \frac{13}{16} > \frac{31}{40} > \frac{63}{80}$

✓ 2.  $\frac{7}{8} > \frac{13}{16} > \frac{63}{80} > \frac{31}{40}$

✗ 3.  $\frac{7}{8} > \frac{63}{80} > \frac{13}{16} > \frac{31}{40}$

✗ 4.  $\frac{13}{16} > \frac{7}{8} > \frac{63}{80} > \frac{31}{40}$

Question ID : 26433073086

Status : Answered

Chosen Option : 2



Q.19 A, B, and C can do a piece of work in 42, 56, and 63 days respectively. They started the work together but A left the work 10 days before the completion of the work while B left the work 12 days before the completion. Find the number of days (approximate) to complete the whole work.

- Ans  1. 29 days  
 2. 25 days  
 3. 15 days  
 4. 24 days

Question ID : 264330116863

Status : Not Attempted and  
Marked For Review

Chosen Option : --

Q.20 The marked price of an AC is Rs. 36800. The shopkeeper offers an off season discount of 11 percent on it. The selling price of the AC is:

- Ans  1. Rs. 33842  
 2. Rs. 32752  
 3. Rs. 31640  
 4. Rs. 34600

Question ID : 264330116748

Status : Answered

Chosen Option : 2

Section : Part-D-English

Q.1 Select the most appropriate ANTONYM of the given word.

Camouflage

- Ans  1. Reveal  
 2. Cloak  
 3. Disguise  
 4. Bluff

Question ID : 26433073575

Status : Answered

Chosen Option : 1

Q.2 Select the most appropriate option to fill in the blank.

Each and every individual has the \_\_\_\_\_ to follow her/his own religion.

- Ans  1. compulsion  
 2. freedom  
 3. economy  
 4. expulsion

Question ID : 26433071881

Status : Answered

Chosen Option : 2

**Q.3** Select the most appropriate option to substitute the underlined segment in the given sentence.

The subsequent QR codes will helping you access the data.

- Ans
- 1. help you access
  - 2. help you accessed
  - 3. helped you access
  - 4. helps you access

Question ID : 26433093017  
Status : Answered  
Chosen Option : 4

**Q.4** Select the correct spelling of the underlined word in the following sentence.

The cowboys were injured badly as they were involved in a dual.

- Ans
- 1. duell
  - 2. duel
  - 3. duet
  - 4. dwell

Question ID : 26433072368  
Status : Marked For Review  
Chosen Option : 4

**Q.5** Select the most appropriate meaning of the given idiom.

Rain on someone's parade

- Ans
- 1. To spoil and ruin a happy moment
  - 2. To restore the disturbed law and order situation
  - 3. To blame and hurt an innocent child
  - 4. To test and check a brilliant student

Question ID : 26433073493  
Status : Answered  
Chosen Option : 1

**Q.6** Select the most appropriate option that can substitute the underlined segment in the given sentence.

What is the qualities of a good teacher?

- Ans
- 1. will be a qualities
  - 2. do the qualities
  - 3. are the qualities
  - 4. is qualities

Question ID : 26433088985  
Status : Answered  
Chosen Option : 3

**Q.7** Select the most appropriate **ANTONYM** of the given word.

**Sensitive**

- Ans**  1. Understanding  
 2. Precise  
 3. Diplomatic  
 4. Numb

Question ID : 26433093427  
Status : Answered  
Chosen Option : 2

**Q.8** Select the most appropriate meaning of the given idiom.

**Miss the boat**

- Ans**  1. Opportunity never knocks twice  
 2. Fail to take advantage of an opportunity  
 3. It is late for the boat  
 4. Boat will leave on time

Question ID : 26433072758  
Status : Answered  
Chosen Option : 2

**Q.9** Select the most appropriate synonym of the given word.  
**Brazen**

- Ans**  1. Loyal  
 2. Bold  
 3. Meek  
 4. Courteous

Question ID : 26433086486  
Status : Not Answered  
Chosen Option : --

**Q.10** Select the most appropriate homonym to fill in the blank.

He was supposed to \_\_\_\_\_ this work.

- Ans**  1. dew  
 2. doux  
 3. due  
 4. do

Question ID : 26433089074  
Status : Answered  
Chosen Option : 4

Q.11 Select the most appropriate ANTONYM of the given word.

Nadir

- Ans  1. Talent  
 2. Zenith  
 3. Abyss  
 4. Essence

Question ID : 26433071983  
Status : Answered  
Chosen Option : 3

Q.12 Select the correct word for the blanks in the given sentence.

My sister \_\_\_\_\_ lift a box of 5 kilograms and I have a \_\_\_\_\_ of carrot juice.

- Ans  1. bottle  
 2. can  
 3. could  
 4. tank

Question ID : 26433060530  
Status : Marked For Review  
Chosen Option : 2

Q.13 The following sentence has been divided into parts. One of them may contain an error.  
Select the part that contains the error from the given options.

I will driving/ you to/ the station/ in the morning.

- Ans  1. in the morning  
 2. I will driving  
 3. you to  
 4. the station

Question ID : 26433089824  
Status : Answered  
Chosen Option : 2

Q.14 Select the most appropriate synonym of the given word.

Sombre

- Ans  1. Accidental  
 2. Decent  
 3. Critical  
 4. Doleful

Question ID : 26433072347  
Status : Not Answered  
Chosen Option : --

**Q.15 Select the INCORRECTLY spelt word.**

Ans  1. Intermittence

2. Cholera

3. Phlegm

4. Psalm

Question ID : 26433073606

Status : Answered

Chosen Option : 1

**Comprehension:**

In the following passage, some words have been deleted. Read the passage carefully and select the most appropriate option to fill in each blank.

The Indian Army, also known as the Bhartiya Thal Sena, is the armed forces' (1)\_\_\_\_\_ component. It grew from the East India Company's military forces, eventually (2)\_\_\_\_\_ the British Indian Army and, after independence, the Indian Army. It is regarded as the world's second-largest active army. The Indian Army's purpose is to ensure national (3)\_\_\_\_\_ and preserve India's sovereignty, territorial integrity, and harmony against external (4)\_\_\_\_\_ and intimidation. It also entails offering humanitarian assistance and support to the (5)\_\_\_\_\_ public during natural catastrophes and unforeseen times.

**SubQuestion No : 16**

**Q.16 Select the most appropriate option to fill in blank no. 1.**

Ans  1. air-based

2. private-based

3. water-based

4. land-based

Question ID : 26433058715

Status : Answered

Chosen Option : 4

**Comprehension:**

In the following passage, some words have been deleted. Read the passage carefully and select the most appropriate option to fill in each blank.

The Indian Army, also known as the Bhartiya Thal Sena, is the armed forces' (1)\_\_\_\_\_ component. It grew from the East India Company's military forces, eventually (2)\_\_\_\_\_ the British Indian Army and, after independence, the Indian Army. It is regarded as the world's second-largest active army. The Indian Army's purpose is to ensure national (3)\_\_\_\_\_ and preserve India's sovereignty, territorial integrity, and harmony against external (4)\_\_\_\_\_ and intimidation. It also entails offering humanitarian assistance and support to the (5)\_\_\_\_\_ public during natural catastrophes and unforeseen times.

**SubQuestion No : 17**

**Q.17 Select the most appropriate option to fill in blank no. 2.**

Ans  1. reciting

2. becoming

3. scrolling

4. destructing

Question ID : 26433058716

Status : Answered

Chosen Option : 1

**Comprehension:**

In the following passage, some words have been deleted. Read the passage carefully and select the most appropriate option to fill in each blank.

The Indian Army, also known as the Bhartiya Thal Sena, is the armed forces' (1)\_\_\_\_\_ component. It grew from the East India Company's military forces, eventually (2)\_\_\_\_\_ the British Indian Army and, after independence, the Indian Army. It is regarded as the world's second-largest active army. The Indian Army's purpose is to ensure national (3)\_\_\_\_\_ and preserve India's sovereignty, territorial integrity, and harmony against external (4)\_\_\_\_\_ and intimidation. It also entails offering humanitarian assistance and support to the (5)\_\_\_\_\_ public during natural catastrophes and unforeseen times.

**SubQuestion No : 18**

**Q.18 Select the most appropriate option to fill in blank no. 3.**

- Ans  1. emergency  
 2. crisis  
 3. security  
 4. forces

Question ID : 26433058717

Status : Answered

Chosen Option : 3

**Comprehension:**

In the following passage, some words have been deleted. Read the passage carefully and select the most appropriate option to fill in each blank.

The Indian Army, also known as the Bhartiya Thal Sena, is the armed forces' (1)\_\_\_\_\_ component. It grew from the East India Company's military forces, eventually (2)\_\_\_\_\_ the British Indian Army and, after independence, the Indian Army. It is regarded as the world's second-largest active army. The Indian Army's purpose is to ensure national (3)\_\_\_\_\_ and preserve India's sovereignty, territorial integrity, and harmony against external (4)\_\_\_\_\_ and intimidation. It also entails offering humanitarian assistance and support to the (5)\_\_\_\_\_ public during natural catastrophes and unforeseen times.

**SubQuestion No : 19**

**Q.19 Select the most appropriate option to fill in blank no. 4.**

- Ans  1. exports  
 2. aggression  
 3. affairs  
 4. ministry

Question ID : 26433058718

Status : Answered

Chosen Option : 3

**Comprehension:**

In the following passage, some words have been deleted. Read the passage carefully and select the most appropriate option to fill in each blank.

The Indian Army, also known as the Bhartiya Thal Sena, is the armed forces' (1)\_\_\_\_\_ component. It grew from the East India Company's military forces, eventually (2)\_\_\_\_\_ the British Indian Army and, after independence, the Indian Army. It is regarded as the world's second-largest active army. The Indian Army's purpose is to ensure national (3)\_\_\_\_\_ and preserve India's sovereignty, territorial integrity, and harmony against external (4)\_\_\_\_\_ and intimidation. It also entails offering humanitarian assistance and support to the (5)\_\_\_\_\_ public during natural catastrophes and unforeseen times.

SubQuestion No : 20

Q.20 Select the most appropriate option to fill in blank no. 5.

- Ans
- 1. exclusive
  - 2. literate
  - 3. unusual
  - 4. general

Question ID : 26433058719

Status : Marked For Review

Chosen Option : 2

Section : Part-D-Hindi

Q.1 निम्नलिखित में से किस वाक्य में विशेषण सम्बन्धी अशुद्धि है?

- Ans
- 1. यह डाल बहुत मोटी है।
  - 2. इस गाँव में बाढ़ से क्षति हुई।
  - 3. वह एक भले आदमी हैं।
  - 4. सबसे मीठा बोलो।

Question ID : 26433062997

Status : Not Answered

Chosen Option : --

Q.2 दिए गए वाक्यों में से किस वाक्य में सही विभक्ति चिह्न का प्रयोग नहीं हुआ है?

- Ans
- 1. गेंद खेलने में अन्य लोगों पर चोट लग सकती है।
  - 2. कुछ बच्चों के हाथों में गेंद है।
  - 3. मैदान में कुछ बच्चे झूलों पर झूल रहे हैं।
  - 4. मैदान में इस तरह गेंद से खेलना ठीक नहीं।

Question ID : 26433062864

Status : Not Answered

Chosen Option : --

Q.3 'देश में विदेश से माल आने की क्रिया' वाक्यांश के लिए उचित शब्द बताइए -

- Ans
- 1. निगमन
  - 2. निर्यात
  - 3. आयात
  - 4. आगमन

Question ID : 26433065914  
Status : Not Answered  
Chosen Option : --

Q.4 निम्नलिखित वाक्य में रेखांकित खंड के स्थान पर प्रयुक्त होने वाले सबसे उपयुक्त विकल्प का चयन कीजिए।  
पूज्यनीय पिता जी का आदेश है।

- Ans
- 1. पूज्य
  - 2. परम
  - 3. पाहन
  - 4. पावन

Question ID : 26433079663  
Status : Not Answered  
Chosen Option : --

Q.5 अध्यापक ने प्रखर को समझाया कि दूसरों पर निर्भर रहकर जीवन में सफलता नहीं मिलती, यहाँ तो            पड़ती है।  
रिक्त स्थान की पूर्ति उचित मुहावरे द्वारा कीजिए।

- Ans
- 1. आगे कुआँ पीछे खाई
  - 2. अपनी करनी पार उतरनी
  - 3. अपनी ढपली अपना राग
  - 4. अपनी पगड़ी अपने हाथ

Question ID : 26433062601  
Status : Not Answered  
Chosen Option : --

Q.6 दूध में कौन पड़ गया?  
उपरोक्त वाक्य में रेखांकित शब्द के स्थान पर कौनसा शब्द उचित होगा?

- Ans
- 1. क्या
  - 2. मैं
  - 3. कोई
  - 4. यह

Question ID : 26433062201  
Status : Not Answered  
Chosen Option : --



Q.7 'पृथ्वी अपने अक्ष पर घूमती है।' इस वाक्य में प्रयुक्त 'अक्ष' शब्द निम्न में से किस अर्थ को व्यक्त करता है?

- Ans
- 1. पासा
  - 2. आत्मा
  - 3. धुरी
  - 4. पहिया

Question ID : 26433069730  
Status : Not Answered  
Chosen Option : --

Q.8 निम्नलिखित विकल्पों में से 'तीनों कालों की बात जानने वाला' वाक्यांश के लिए एक सार्थक शब्द क्या होगा ?

- Ans
- 1. त्रिकालज्ञ
  - 2. सर्वशक्तिमान
  - 3. बुद्धिमान
  - 4. विद्वान

Question ID : 26433062537  
Status : Not Answered  
Chosen Option : --

Q.9 "बाज़ार में अधिक कोलाहल था।" उक्त वाक्य में प्रयुक्त 'कोलाहल' के स्थान पर उसके विलोम शब्द का प्रयोग निम्न में से किस वाक्य में किया गया है?

- Ans
- 1. बाज़ार में अधिक हलचल थी।
  - 2. बाज़ार में अधिक शांति थी।
  - 3. बाज़ार में अधिक लोग थे।
  - 4. बाज़ार में अधिक शोर था।

Question ID : 26433067019  
Status : Not Answered  
Chosen Option : --

Q.10 'चास' का अर्थ है, 'जुताई'। परंतु 'चाष' का अर्थ प्रकट करने वाले शब्द से निम्न वाक्य पूर्ण कीजिए। हमने \_\_\_\_\_ कभी नहीं देखा।

- Ans
- 1. नीलकंठ पक्षी
  - 2. काकतुआ
  - 3. पंडुक पक्षी
  - 4. शतुरमुर्ग

Question ID : 26433063080  
Status : Not Answered  
Chosen Option : --

Q.11 'जिसके आने की तिथि न हो' वाक्यांश के लिए सार्थक शब्द है-

- Ans  1. अग्रज  
 2. अतिथि  
 3. सतिथि  
 4. विस्थापित

Question ID : 26433065858  
Status : Not Answered  
Chosen Option : --

Q.12 नीचे दिए मुहावरे का सही अर्थ दिए गए विकल्पों में से चुनिए-  
शैतान की आँत

- Ans  1. बुरी बात  
 2. धोखे की बात  
 3. कड़वी बात  
 4. लम्बी बात

Question ID : 26433062313  
Status : Not Answered  
Chosen Option : --

Q.13 'लालकिला पूरे भारत में प्रख्यात एक ऐतिहासिक इमारत है।' ऊपर दिए वाक्य में रेखांकित शब्द का पर्यायवाची क्या होगा?

- Ans  1. प्रसिद्ध  
 2. कुख्यात  
 3. परिपूर्ण  
 4. पूर्ण

Question ID : 26433085103  
Status : Not Answered  
Chosen Option : --

Q.14 निम्नलिखित वाक्य के किस शब्द में अशुद्धि है?  
उसकि गर्दन शर्म से नीची थी।

- Ans  1. गर्दन  
 2. नीची  
 3. उसकि  
 4. शर्म

Question ID : 26433066763  
Status : Not Answered  
Chosen Option : --

Q.15 निम्नलिखित वाक्य के किस खंड में त्रुटि है?  
माता-पिता का आदर रखना चाहिए।

- Ans
- 1. आदर
  - 2. रखना
  - 3. माता-पिता
  - 4. का

Question ID : 26433066762  
Status : Not Answered  
Chosen Option : --

**Comprehension:**

निम्नलिखित गद्यांश में कुछ शब्दों को हटा दिया गया है। दिए गए विकल्पों की सहायता से रिक्त स्थानों की पूर्ति कीजिए। प्रत्येक संख्या के लिए सबसे उपयुक्त विकल्प का चयन कीजिए।  
होली का त्यौहार प्रति वर्ष 1. \_\_\_\_\_ मास की पूर्णिमा को मनाया जाता है। पूर्णिमा की रात्रि को 2. \_\_\_\_\_ का दहन होता है। सभी 3. \_\_\_\_\_ भुलाकर एक-दूसरे पर रंग डालते हैं। रंगों का पर्व होली 4. \_\_\_\_\_ दृष्टि से विशेष महत्व रखता है। इस दिन शत्रु भी अपनी 5. \_\_\_\_\_ भुलाकर मित्र बन जाते हैं।

**SubQuestion No : 16**

Q.16 रिक्त स्थान 1 की पूर्ति के लिए सबसे उपयुक्त विकल्प का चयन करें।

- Ans
- 1. भाद्रपद
  - 2. कार्तिक
  - 3. फाल्गुन
  - 4. वैशाख

Question ID : 264330110855  
Status : Not Answered  
Chosen Option : --

**Comprehension:**

निम्नलिखित गद्यांश में कुछ शब्दों को हटा दिया गया है। दिए गए विकल्पों की सहायता से रिक्त स्थानों की पूर्ति कीजिए। प्रत्येक संख्या के लिए सबसे उपयुक्त विकल्प का चयन कीजिए।  
होली का त्यौहार प्रति वर्ष 1. \_\_\_\_\_ मास की पूर्णिमा को मनाया जाता है। पूर्णिमा की रात्रि को 2. \_\_\_\_\_ का दहन होता है। सभी 3. \_\_\_\_\_ भुलाकर एक-दूसरे पर रंग डालते हैं। रंगों का पर्व होली 4. \_\_\_\_\_ दृष्टि से विशेष महत्व रखता है। इस दिन शत्रु भी अपनी 5. \_\_\_\_\_ भुलाकर मित्र बन जाते हैं।

**SubQuestion No : 17**

Q.17 रिक्त स्थान 2 की पूर्ति के लिए सबसे उपयुक्त विकल्प का चयन करें।

- Ans
- 1. मेघनाद
  - 2. होलिका
  - 3. सुर्पणखा
  - 4. रावण

Question ID : 264330110856  
Status : Not Answered  
Chosen Option : --

**Comprehension:**

निम्नलिखित गद्यांश में कुछ शब्दों को हटा दिया गया है। दिए गए विकल्पों की सहायता से रिक्त स्थानों की पूर्ति कीजिए। प्रत्येक संख्या के लिए सबसे उपयुक्त विकल्प का चयन कीजिए।  
होली का त्यौहार प्रति वर्ष 1. \_\_\_\_\_ मास की पूर्णिमा को मनाया जाता है। पूर्णिमा की रात्रि को 2. \_\_\_\_\_ का दहन होता है। सभी 3. \_\_\_\_\_ भुलाकर एक-दूसरे पर रंग डालते हैं। रंगों का पर्व होली 4. \_\_\_\_\_ दृष्टि से विशेष महत्व रखता है। इस दिन शत्रु भी अपनी 5. \_\_\_\_\_ भुलाकर मित्र बन जाते हैं।

**SubQuestion No : 18**

Q.18 रिक्त स्थान 3 की पूर्ति के लिए सबसे उपयुक्त विकल्प का चयन करें।

- Ans  1. भेद-भाव  
 2. नाम  
 3. पर्वों  
 4. काम

Question ID : 264330110857  
Status : Not Answered  
Chosen Option : --

**Comprehension:**

निम्नलिखित गद्यांश में कुछ शब्दों को हटा दिया गया है। दिए गए विकल्पों की सहायता से रिक्त स्थानों की पूर्ति कीजिए। प्रत्येक संख्या के लिए सबसे उपयुक्त विकल्प का चयन कीजिए।  
होली का त्यौहार प्रति वर्ष 1. \_\_\_\_\_ मास की पूर्णिमा को मनाया जाता है। पूर्णिमा की रात्रि को 2. \_\_\_\_\_ का दहन होता है। सभी 3. \_\_\_\_\_ भुलाकर एक-दूसरे पर रंग डालते हैं। रंगों का पर्व होली 4. \_\_\_\_\_ दृष्टि से विशेष महत्व रखता है। इस दिन शत्रु भी अपनी 5. \_\_\_\_\_ भुलाकर मित्र बन जाते हैं।

**SubQuestion No : 19**

Q.19 रिक्त स्थान 4 की पूर्ति के लिए सबसे उपयुक्त विकल्प का चयन करें।

- Ans  1. आधुनिक  
 2. पौराणिक  
 3. काल्पनिक  
 4. साहित्यिक

Question ID : 264330110858  
Status : Not Answered  
Chosen Option : --

**Comprehension:**

निम्नलिखित गद्यांश में कुछ शब्दों को हटा दिया गया है। दिए गए विकल्पों की सहायता से रिक्त स्थानों की पूर्ति कीजिए। प्रत्येक संख्या के लिए सबसे उपयुक्त विकल्प का चयन कीजिए।  
होली का त्यौहार प्रति वर्ष 1. \_\_\_\_\_ मास की पूर्णिमा को मनाया जाता है। पूर्णिमा की रात्रि को 2. \_\_\_\_\_ का दहन होता है। सभी 3. \_\_\_\_\_ भुलाकर एक-दूसरे पर रंग डालते हैं। रंगों का पर्व होली 4. \_\_\_\_\_ दृष्टि से विशेष महत्व रखता है। इस दिन शत्रु भी अपनी 5. \_\_\_\_\_ भुलाकर मित्र बन जाते हैं।

**SubQuestion No : 20**

Q.20 रिक्त स्थान 5 की पूर्ति के लिए सबसे उपयुक्त विकल्प का चयन करें।

- Ans  1. मतभेद  
 2. दोस्ती  
 3. शत्रुता  
 4. भाईचारा

Question ID : 264330110859  
Status : Not Answered  
Chosen Option : --

## Constable GD in CAPFs SSF Rifleman GD in Assam Rifles and Sepoy in NCB Examination 2022

Roll Number	<b>KD Job Updates</b>
Candidate Name	<b>KD Job Updates</b>
Venue Name	Shri Bhawani Niketan Institute of Technology and Management
Exam Date	23/01/2023
Exam Time	9:00 AM - 10:00 AM
Subject	Constable GD Examination 2022

Section : **Part-A-General Intelligence and Reasoning**

**Q.1** Which two signs should be interchanged to make the below equation mathematically correct?

$$35 + 21 - 192 \div 32 \times 7 = 154$$

- Ans  1.  $\times$  and  $-$   
 2.  $+$  and  $-$   
 3.  $-$  and  $+$   
 4.  $+$  and  $\div$

Question ID : **264330117558**  
 Status : **Answered**  
 Chosen Option : 1

**Q.2** Select the correct mirror image of the given figure when the mirror is placed at MN as shown below.



- Ans  1. **b J 7 c ! i n g**  
 2. **d J 7 c ! i n g**  
 3. **b 7 J c ! i n g**  
 4. **b J 7 c ! i n g**

Question ID : **26433082330**  
 Status : **Answered**  
 Chosen Option : 1

Q.3 Select the correct combination of mathematical signs to sequentially replace the \* signs and to balance the given equation.

$$78 * 39 * 46 * 5 * 10 * 2$$

- Ans
- 1. ÷, +, =, ×, -
  - 2. +, ÷, =, ×, -
  - 3. ÷, +, -, ×, =
  - 4. ÷, -, =, ×, +

Question ID : 26433094986

Status : Answered

Chosen Option : 1

Q.4 Six people are sitting in two parallel rows with 3 people each, in such a way that there is equal distance between adjacent persons. P, O and T are seated in the same row facing South. A, E and R are seated in the same row facing North. E sits at the extreme right end of their row and is exactly opposite T. A sits at the extreme left end of their row and is exactly opposite O. (Persons facing south are exactly opposite to persons facing north)

Who sits at the centre of the row of people facing South?

- Ans
- 1. E
  - 2. O
  - 3. T
  - 4. P

Question ID : 26433068744

Status : Answered

Chosen Option : 4

Q.5 In a certain code language, 'FACTOR' is written as 'DBGTQV' and 'FAMILY' is written as 'NGBKAN'. How will 'FATHER' be written as in that language?

- Ans
- 1. TAFREH
  - 2. UBG TGJ
  - 3. REHTAF
  - 4. UBGREH

Question ID : 26433090044

Status : Marked For Review

Chosen Option : 2

Q.6 Which of the following numbers will replace the question mark (?) in the given series?  
8, 14, 26, 50, ?

- Ans
- 1. 98
  - 2. 32
  - 3. 113
  - 4. 54

Question ID : 26433082737

Status : Answered

Chosen Option : 1

Q.7 Which of the following options will replace the question mark (?) in the given series?  
52, 86, 121, ?, 194, 232

- Ans
- 1. 176
  - 2. 155
  - 3. 157
  - 4. 141

Question ID : 26433089440  
Status : Answered  
Chosen Option : 3

Q.8 Select the figure from among the given options that can replace the question mark (?) in the following series.



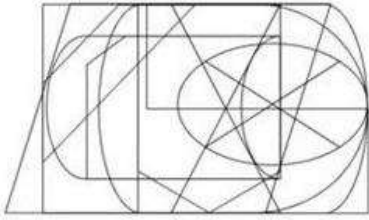
Ans

- 1.
- 2.
- 3.
- 4.

KD Job Updates

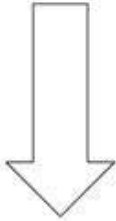
Question ID : 26433080762  
Status : Answered  
Chosen Option : 3

Q.9 Select the option figure which is embedded in the given figure. (Rotation is NOT allowed)

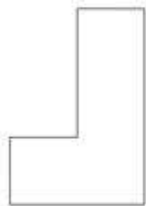


Ans

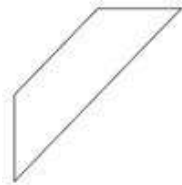
✗ 1.



✗ 2.



✓ 3.



✗ 4.



KD Job Updates

Question ID : 26433085741

Status : Answered

Chosen Option : 3

Q.10 Select the option that is related to the fifth letter-cluster in the same way as the second letter-cluster is related to the first letter-cluster and the fourth letter-cluster is related to the third letter-cluster.

PEAR : EPRA :: LION : ILNO :: BEAT : ?

Ans ✓ 1. EBTA

✗ 2. HEAR

✗ 3. THEF

✗ 4. ROAR

Question ID : 26433083109

Status : Answered

Chosen Option : 1



Q.11 Select the option that is related to the fifth letter-cluster in the same way as the second letter-cluster is related to the first letter-cluster and the fourth letter-cluster is related to the third letter-cluster.

NGC : OJH :: BQJ : CTO :: PTC : ?

- Ans  1. QWH  
 2. OQH  
 3. QUD  
 4. OWH

Question ID : 26433057744  
Status : Answered  
Chosen Option : 1

Q.12 Which of the following terms will replace the question mark (?) in the given series?  
ARHT, YOJW, WLLZ, ?, SFPP

- Ans  1. UINC  
 2. TIKC  
 3. TINC  
 4. UJNB

Question ID : 26433069446  
Status : Answered  
Chosen Option : 1

Q.13 Eight people, D, E, M, P, T, W, Y and Z are sitting in a straight line, facing north. D sits third from the left end of the line. Only one person sits between D and Z. P sits third to the right of Z. Only two people sit between P and W. E sits to the immediate right of Y. M does not sit at any of the extreme ends of the line. What is the position of T from the right end of the line?

- Ans  1. Fourth  
 2. Third  
 3. Second  
 4. First

Question ID : 26433092421  
Status : Answered  
Chosen Option : 4

Q.14 In a certain code language, 'POWDER' is written as 'QPXEFS' and 'SHAMPOO' is written as 'TIBNQQP'. How will 'PERFUME' be written in that language?

- Ans  1. QFSFGVN  
 2. QFSGVNF  
 3. QFSNGVF  
 4. QFSGNVF

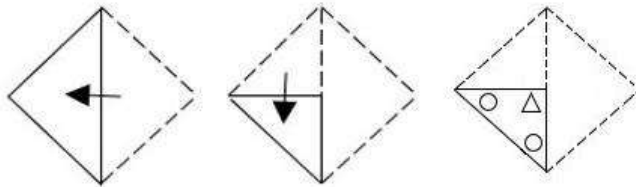
Question ID : 26433068227  
Status : Answered  
Chosen Option : 2

Q.15 'P % Q' means 'P is the brother of Q'.  
 'P + Q' means 'P is the daughter of Q'.  
 'P = Q' means 'P is the son of Q'.  
 'P # Q' means 'P is the wife of Q'.  
 If  $L = M \# N \% O + P$ , how is L related to P?

- Ans
- 1. Father's father
  - 2. Son's son
  - 3. Brother's son
  - 4. Daughter's son

Question ID : 26433087001  
 Status : Answered  
 Chosen Option : 1

Q.16 A paper is folded and cut as shown below. How will it appear when unfolded?



Ans

- 1.
- 2.
- 3.
- 4.

Question ID : 26433090091  
 Status : Answered  
 Chosen Option : 1

Q.17 Select the set in which the numbers are related in the same way as are the numbers of the following sets.

(NOTE : Operations should be performed on the whole numbers, without breaking down the numbers into its constituent digits. E.g. 13 – Operations on 13 such as adding/subtracting/multiplying etc. to 13 can be performed. Breaking down 13 into 1 and 3 and then performing mathematical operations on 1 and 3 is not allowed)  
(16, 350, 19)  
(14, 310, 17)

- Ans
- 1. (17, 380, 19)
  - 2. (12, 300, 19)
  - 3. (12, 240, 17)
  - 4. (13, 320, 19)

Question ID : 26433076545

Status : **Not Attempted and Marked For Review**

Chosen Option : --

Q.18 Select the option that represents the correct order of the given words as they would appear in an English dictionary.

1. FAWN
2. FAVOUR
3. FATHER
4. FATIGUE
5. FAT
6. FATE

- Ans
- 1. 5, 3, 6, 4, 1, 2
  - 2. 2, 6, 3, 4, 5, 1
  - 3. 5, 6, 3, 4, 2, 1
  - 4. 6, 4, 3, 2, 1, 5

Question ID : 26433079381

Status : **Answered**

Chosen Option : 3

Q.19 Three Statements are given followed by Three conclusions numbered I, II and III.

Assuming the statements to be true, even if they seem to be at variance with commonly known facts, decide which of the conclusions logically follow(s) from the statements.

Statements:

All boys are tomatoes.

Some tomatoes are ladders.

No ladder is small.

Conclusions:

I. Some boys are not tomatoes.

II. Some ladders are tomatoes.

III. Some boys are ladders.

- Ans
- 1. Only conclusion I follows.
  - 2. None of the conclusions follow.
  - 3. Only conclusion II follows.
  - 4. Only conclusion III follows.

Question ID : 26433081791

Status : **Answered**

Chosen Option : 3

**Q.20** Which letter cluster will replace the question mark (?) to complete the given series?  
FOWC, KWLI, ?, UMPU, ZUEA

- Ans
- 1. SDCO
  - 2. PEAO
  - 3. SEQO
  - 4. PWQO

Question ID : 26433079421  
Status : Answered  
Chosen Option : 2

Section : Part-B-General Knowledge and General awareness

**Q.1** In which year did the Indian gymnast Dipa Karmakar participate in the Olympics?

- Ans
- 1. 2008
  - 2. 2012
  - 3. 2016
  - 4. 2020

Question ID : 26433092328  
Status : Marked For Review  
Chosen Option : 4

**Q.2** Which Union Minister of India launched the Transport 4 All Challenge Stage-2 in 2022?

- Ans
- 1. Dharmendra Pradhan
  - 2. Hardeep Singh Puri
  - 3. Sarbananda Sonowal
  - 4. Raj Kumar Singh

Question ID : 264330114964  
Status : Answered  
Chosen Option : 2

**Q.3** Skill India is an initiative launched by the government in \_\_\_\_\_ to train over 40 crore Indians in different industry-related jobs.

- Ans
- 1. 2017
  - 2. 2015
  - 3. 2010
  - 4. 2012

Question ID : 264330116189  
Status : Not Answered  
Chosen Option : --

Q.4 What is the maximum length of the tennis racquet for professional play?

- Ans  1. 35 inches  
 2. 29 inches  
 3. 30 inches  
 4. 40 inches

Question ID : 26433071572  
Status : Answered  
Chosen Option : 2

Q.5 What is the Indian postal network famous for in the world?

- Ans  1. It is the oldest postal network  
 2. It is the smallest postal network  
 3. It is the largest postal network  
 4. It is the cheapest postal network

Question ID : 264330115592  
Status : Answered  
Chosen Option : 3

Q.6 राष्ट्रिय आय को \_\_\_\_\_ की तरह परिभाषित किया जाता है।

- Ans  1. कारक लागत पर एन. एन. पी.  
 2. एन. एन. पी.  
 3. कारक लागत पर जी. एन. पी.  
 4. बाजार मूल्य पर जी. एन. पी.

Question ID : 264330115345  
Status : Not Answered  
Chosen Option : --

Q.7 As per the Census 2011, which is the second least populous state in the country?

- Ans  1. Mizoram  
 2. Sikkim  
 3. Meghalaya  
 4. Arunachal Pradesh

Question ID : 264330116052  
Status : Answered  
Chosen Option : 2

Q.8 As a result of Green Revolution, import of food crops was \_\_\_\_\_ in India,.

- Ans  1. increased  
 2. reduced  
 3. unaffected  
 4. banned

Question ID : 264330115426  
Status : Answered  
Chosen Option : 2

Q.9 Who inaugurated Bengaluru Tech Summit 2022?

- Ans  1. Satya Nadella  
 2. Sudha KV  
 3. Narendra Modi  
 4. Droupadi Murmu

Question ID : 264330115048  
Status : Answered  
Chosen Option : 3

Q.10 What is the atomic number of Carbon?

- Ans  1. 6  
 2. 8  
 3. 9  
 4. 7

Question ID : 26433066472  
Status : Answered  
Chosen Option : 1

Q.11 What is the name of the largest waterfall in Kerala?

- Ans  1. Dudhsagar falls  
 2. Vazhachal falls  
 3. Kunchikal falls  
 4. Athirappilly falls

Question ID : 264330116016  
Status : Answered  
Chosen Option : 3

Q.12 Pandit Birju Maharaj was associated with which of the following dance forms?

- Ans  1. Kuchipudi  
 2. Manipuri  
 3. Odissi  
 4. Kathak

Question ID : 26433071452  
Status : Answered  
Chosen Option : 4

Q.13 आयरन की कमी से क्या होता है?

- Ans  1. थाइरॉइड  
 2. हाइपोकेल्शियमिया  
 3. एनीमिया  
 4. काशिओरकोर

Question ID : 264330115226  
Status : Answered  
Chosen Option : 3

Q.14 Who among the following had termed the Right to Constitutional Remedy as a 'soul of the constitution'?

- Ans  1. Vallabhbhai Patel  
 2. B.R. Ambedkar  
 3. Jawaharlal Nehru  
 4. Rajendra Prasad

Question ID : 26433086802  
Status : Answered  
Chosen Option : 2

Q.15 मौर्योत्तर काल में, \_\_\_\_\_ वे पुरुष और महिलाएं थे, जिनके पास जमीनें नहीं थी।

- Ans  1. भूमिहार  
 2. गृहपति  
 3. ग्राम भोजक  
 4. दास कर्मकार

Question ID : 26433085225  
Status : Answered  
Chosen Option : 4

Q.16 Name the Bengali reformer and book writer who supported widow remarriage.

- Ans  1. Bal Gangadhar Tilak  
 2. Bipin Chandra Pal  
 3. Ishwar Chandra Vidyasagar  
 4. Jawaharlal Nehru

Question ID : 264330115709  
Status : Answered  
Chosen Option : 3

Q.17 अटलांटा के मेयर ने, किस नृत्य गुरु के सम्मान में 3 नवंबर 1994 को कुचिपुड़ी नृत्य नाट्य दिवस घोषित किया था?

- Ans  1. जिया मोहिउद्दीन डागर  
 2. एन राजम  
 3. वेम्पति चिन्ना सत्यम  
 4. उदय शंकर

Question ID : 264330115843  
Status : Not Answered  
Chosen Option : --

Q.18 चुनाव आयोग \_\_\_\_\_, राज्य विधानमंडल और राष्ट्रपति एवं उपराष्ट्रपति के पदों के लिए चुनाव का संचालन करता है।

- Ans
- 1. डेप्युटी स्पीकर
  - 2. स्पीकर
  - 3. संसद
  - 4. प्रधानमंत्री

Question ID : 26433086834  
Status : Answered  
Chosen Option : 3

Q.19 Which Five Year Plan Focused on rapid industrialization of heavy & basic industries?

- Ans
- 1. 1st
  - 2. 4th
  - 3. 2nd
  - 4. 3rd

Question ID : 264330116138  
Status : Answered  
Chosen Option : 3

Q.20 तोरग्या, एक \_\_\_\_\_-दिवसीय मठ उत्सव है, जो अरुणाचल प्रदेश की मोनपा जनजाति द्वारा मनाया जाता है।

- Ans
- 1. चार
  - 2. छह
  - 3. तीन
  - 4. सात

Question ID : 264330115129  
Status : Answered  
Chosen Option : 2

Section : Part-C-Elementary Mathematics

Q.1 Applied to a bill of Rs. 10000 the difference between a discount of 32 percent and two successive discounts of 20 percent and 12 percent is:

- Ans
- 1. Rs. 190
  - 2. Rs. 180
  - 3. Rs. 240
  - 4. Rs. 260

Question ID : 264330116758  
Status : Marked For Review  
Chosen Option : 3



Q.2 By selling 25 articles for a rupee a man gains 20%. How many for a rupee did he buy?

- Ans  1. 40  
 2. 25  
 3. 35  
 4. 30

Question ID : 26433075495  
Status : Answered  
Chosen Option : 4

Q.3 If 45 men can do a work in 30 hours, then in how many hours will 20 men do the same work?

- Ans  1. 65.5  
 2. 52.0  
 3. 45.0  
 4. 67.5

Question ID : 26433075950  
Status : Answered  
Chosen Option : 4

Q.4 Two trains start at the same time from Vijayawada and Calcutta and proceed towards each other at the speed of 24 km/h and 42 km/h, respectively. When they meet, it is found that one train has travelled 140 km more than the other. The distance between the two stations is: (Consider up to two decimals)

- Ans  1. 413.33 km  
 2. 540.33 km  
 3. 510.33 km  
 4. 513.33 km

Question ID : 26433081043  
Status : Not Answered  
Chosen Option : --

Q.5 Two buckets are filled with milk and water in the ratio of 4 : 1 and 7 : 2. If these mixtures are mixed in the ratio of 1 : 5 respectively, then the resulting mixture will have water and milk in the ratio of:

- Ans  1. 59 : 111  
 2. 59 : 211  
 3. 211 : 59  
 4. 34 : 211

Question ID : 26433075792  
Status : Answered  
Chosen Option : 2

Q.6 A principal becomes ₹1,458 at the rate of 8% per annum on compound interest in 2 years and interest is compounding annually. What is the principal?

- Ans
- 1. ₹1,250
  - 2. ₹1,210
  - 3. ₹1,180
  - 4. ₹1,280

Question ID : 26433080129  
Status : Answered  
Chosen Option : 1

Q.7 A number is first increased by 20% and then reduced by 20%. What would be the percentage change in the number?

- Ans
- 1. No change
  - 2. Increase by 4%
  - 3. Decrease by 4%
  - 4. Increase by 2%

Question ID : 26433075139  
Status : Answered  
Chosen Option : 3

Q.8 A trader gains 10% after selling an item at a 15% discount on the marked price. The ratio of cost price and the marked price is:

- Ans
- 1. 17:22
  - 2. 12:17
  - 3. 13:21
  - 4. 15:22

Question ID : 26433075470  
Status : Answered  
Chosen Option : 1

Q.9 Kuldeep is twice as efficient as Manish to do a work. Working together they can finish a piece of work in 36 days. Kuldeep alone can finish the work in:

- Ans
- 1. 56 days
  - 2. 50 days
  - 3. 54 days
  - 4. 52 days

Question ID : 26433076430  
Status : Answered  
Chosen Option : 3

Q.10 A can do as much work as B and C together can do. A and B can together do a piece of work in 7 hours 12 minutes and C can do it in 36 hours. Find the time (in hours) that B needs to do the work alone.

- Ans
- 1. 13 hours
  - 2. 14 hours
  - 3. 15 hours
  - 4. 18 hours

Question ID : 264330116873  
Status : Answered  
Chosen Option : 1

Q.11 How much time a person take to cover a distance of 300 metre, if he runs at a speed of 10 km/h?

- Ans
- 1. 5 min
  - 2. 1 min 48 sec
  - 3. 8 min
  - 4. 4 min

Question ID : 26433075392  
Status : Answered  
Chosen Option : 2

Q.12 A sum of ₹10,000 was taken from a bank at the rate of 6% per annum to be compounded half yearly. How much has to be returned after one and half years?

- Ans
- 1. ₹10,215
  - 2. ₹10,927
  - 3. ₹10,879
  - 4. ₹10,567

Question ID : 26433085763  
Status : Answered  
Chosen Option : 2

Q.13 If the diameter of the base and the height of a cylinder are 16cm and 20 cm respectively, then what is the total surface area of the cylinder? (Use  $\pi = 22/7$ )

- Ans
- 1.  $1408 \text{ cm}^2$
  - 2.  $1428 \text{ cm}^2$
  - 3.  $1454 \text{ cm}^2$
  - 4.  $1488 \text{ cm}^2$

Question ID : 26433075711  
Status : Answered  
Chosen Option : 1

Q.14 If the radius of a sphere is 70 feet, then find its surface area. (Use  $\pi = \frac{22}{7}$ )

- Ans
- 1. 71542 feet<sup>2</sup>
  - 2. 61600 feet<sup>2</sup>
  - 3. 43200 feet<sup>2</sup>
  - 4. 53124 feet<sup>2</sup>

Question ID : 26433080064  
Status : Answered  
Chosen Option : 2

Q.15 Simplify the following.  
{8.4 ÷ 12 × [(27 - 6)<sup>2</sup> ÷ 3] (7 - 5)}

- Ans
- 1. 132.5
  - 2. 182.4
  - 3. 205.8
  - 4. 176.4

Question ID : 26433079990  
Status : Answered  
Chosen Option : 3

Q.16 Johns monthly expenditure is 85% of his monthly salary and Jack's monthly expenditure is 90% of his monthly salary. Their combined expenditure is 38%. If John's monthly salary is ₹60000, then what is the monthly salary of Jack?

- Ans
- 1. ₹1,00,000
  - 2. ₹80,000
  - 3. ₹70,000
  - 4. ₹90,000

Question ID : 26433079912  
Status : Not Answered  
Chosen Option : --

Q.17 Ram covers 500 km distance in 20 hours in traffic; he covered some distance by bike at 30 km/h, and rest by car at 20 km/h. The distance covered by bike (in km) is:

- Ans
- 1. 300
  - 2. 250
  - 3. 200
  - 4. 100

Question ID : 26433079914  
Status : Answered  
Chosen Option : 1

Q.18 16 m, 14 m and 10 m are the dimensions of a room. Find the length of the greatest possible scale to measure all dimensions exactly.

- Ans
- 1. 3 m
  - 2. 4 m
  - 3. 2 m
  - 4. 10 m

Question ID : 26433090275  
Status : Answered  
Chosen Option : 3

Q.19 Revanth sold 8 shirts for a total profit of Rs.480 and 12 shirts for a total profit of Rs.160. At what profit per shirt should he sell the remaining 20 shirts so that he gets an average profit of Rs.20 per shirt?

- Ans
- 1. Rs.4
  - 2. Rs.2
  - 3. Rs.8
  - 4. Rs.6

Question ID : 26433073007  
Status : Not Answered  
Chosen Option : --

Q.20 According to the wildlife census, there were 550 panthers in 2021 in Rajasthan. If it is expected to increase by 2 percent the next year, then what is the population of the panthers in the year 2022?

- Ans
- 1. 581
  - 2. 566
  - 3. 578
  - 4. 561

Question ID : 264330116793  
Status : Answered  
Chosen Option : 4

Section : Part-D-English

Q.1 Select the most appropriate option to fill in the blanks and make the sentence meaningful.

The \_\_\_\_\_ from my window is of the \_\_\_\_\_.

- Ans
- 1. seen; sea
  - 2. seen; see
  - 3. scene; sea
  - 4. scene; see

Question ID : 26433092100  
Status : Not Answered  
Chosen Option : --

Q.2 Select the most appropriate meaning of the underlined idiom that can be substituted in the following sentence.

The fate of the accused hangs in the balance.

- Ans  1. remains undecided  
 2. gets a fair decision  
 3. gets an unfair decision  
 4. gets a very fast decision

Question ID : 26433072231  
Status : Not Answered  
Chosen Option : --

Q.3 Select the correct option to substitute the underlined segment in the given sentence. If no substitution is required, select 'No substitution'.

They is going to Delhi with their friends.

- Ans  1. was going  
 2. will going  
 3. No substitution  
 4. are going

Question ID : 26433090805  
Status : Not Answered  
Chosen Option : --

Q.4 Select the most appropriate ANTONYM of the given word.

Jaded

- Ans  1. Renewed  
 2. Impressed  
 3. Settled  
 4. Unflinching

Question ID : 26433091821  
Status : Not Answered  
Chosen Option : --

Q.5 The sentence given below has one misspelt word. Spot the INCORRECTLY spelt word and select its correct spelling.

Ashish was flabbergasted when we told him about our latest achievement.

- Ans  1. Flabergested  
 2. Flabergasted  
 3. Flabbergasted  
 4. Fabbergasted

Question ID : 26433073549  
Status : Not Answered  
Chosen Option : --

Q.6 Select the most appropriate synonym of the underlined word.

It was a perilous journey.

- Ans
- 1. Tremendous
  - 2. Dangerous
  - 3. Loud
  - 4. Nasty

Question ID : 26433088763  
Status : Not Answered  
Chosen Option : --

Q.7 Select the most appropriate synonym of the given word.

Immune

- Ans
- 1. Resistant
  - 2. Sensitive
  - 3. Provoked
  - 4. Vulnerable

Question ID : 26433088202  
Status : Not Answered  
Chosen Option : --

Q.8 Select the most appropriate ANTONYM of the given word.

Vicinity

- Ans
- 1. Remote
  - 2. Natural
  - 3. Adjacent
  - 4. Proximity

Question ID : 26433072215  
Status : Not Answered  
Chosen Option : --

Q.9 Select the most appropriate option that can substitute the underlined segment in the given sentence.

The student repeatedly referred about one particular author during his presentation.

- Ans
- 1. referenced on one particular
  - 2. referred of one particular
  - 3. referred for one particular
  - 4. referred to one particular

Question ID : 26433091965  
Status : Not Answered  
Chosen Option : --

Q.10 Select the correct pair of synonyms to fill in the blanks.

Seema was shivering, and her body was almost \_\_\_\_\_ due to the long exposure to \_\_\_\_\_ winds from the mountains.

- Ans
- 1. frozen, icy
  - 2. warm, steamy
  - 3. dry, arid
  - 4. wet, humid

Question ID : 26433061052  
Status : Not Answered  
Chosen Option : --

Q.11 Select the most appropriate homonym of the given word.

Idol

- Ans
- 1. eye lid
  - 2. doll
  - 3. Idle
  - 4. dull

Question ID : 26433086348  
Status : Not Answered  
Chosen Option : --

Q.12 Select the most appropriate meaning of the given idiom.

Bone to pick

- Ans
- 1. Having a fond memory to tell
  - 2. Cleaning the floor for any garbage
  - 3. Having a complaint that needs to be discussed
  - 4. Making a feast

Question ID : 26433084602  
Status : Not Answered  
Chosen Option : --

Q.13 Select the INCORRECTLY spelt word.

- Ans
- 1. Irrelevant
  - 2. Miniature
  - 3. Condolance
  - 4. Millennium

Question ID : 26433073737  
Status : Not Answered  
Chosen Option : --



**Q.14** Select the most appropriate option that can substitute the underlined segment in the given sentence. If there is no need to substitute it, select 'No substitution'.  
The young girl was so afraid of her seniors that she refused to go to school.

- Ans
- 1. so afraid to her seniors
  - 2. so afraid at her seniors
  - 3. No substitution
  - 4. so afraid over her seniors

Question ID : 26433093076  
Status : Not Answered  
Chosen Option : --

**Q.15** The following sentence has been split into four segments. Identify the segment that contains a grammatical error.

The teacher will / certainly help you / if you will / ask her.

- Ans
- 1. The teacher will
  - 2. ask her
  - 3. certainly help you
  - 4. if you will

Question ID : 264330108877  
Status : Not Answered  
Chosen Option : --

**Comprehension:**

In the following passage, some words have been deleted. Read the passage carefully and select the most appropriate option to fill in each blank.

A beautiful spectacle for anyone to (1)\_\_\_\_\_ would be the crowds that throng to see the Indian cricket team playing, whether it be in India or in other parts of the globe. This (2)\_\_\_\_\_ is the occasion where the spirit of oneness is all pervasive. India with all its diversity (3)\_\_\_\_\_ be seen either rejoicing or moaning depending on the sway of the game (4)\_\_\_\_\_ watched. Unity in diversity is (5)\_\_\_\_\_ in all its glory.

**SubQuestion No : 16**

**Q.16** Select the most appropriate option to fill in blank number 1.

- Ans
- 1. behold
  - 2. tarnish
  - 3. vanish
  - 4. sold

Question ID : 26433091788  
Status : Not Answered  
Chosen Option : --

**Comprehension:**

In the following passage, some words have been deleted. Read the passage carefully and select the most appropriate option to fill in each blank.

A beautiful spectacle for anyone to (1)\_\_\_\_\_ would be the crowds that throng to see the Indian cricket team playing, whether it be in India or in other parts of the globe. This (2)\_\_\_\_\_ is the occasion where the spirit of oneness is all pervasive. India with all its diversity (3)\_\_\_\_\_ be seen either rejoicing or moaning depending on the sway of the game (4)\_\_\_\_\_ watched. Unity in diversity is (5)\_\_\_\_\_ in all its glory.

**SubQuestion No : 17**

**Q.17 Select the most appropriate option to fill in blank number 2.**

- Ans  1. ruthlessly  
 2. undoubtedly  
 3. doubtfully  
 4. indefinitely

Question ID : 26433091789  
Status : Not Answered  
Chosen Option : --

**Comprehension:**

In the following passage, some words have been deleted. Read the passage carefully and select the most appropriate option to fill in each blank.

A beautiful spectacle for anyone to (1)\_\_\_\_\_ would be the crowds that throng to see the Indian cricket team playing, whether it be in India or in other parts of the globe. This (2)\_\_\_\_\_ is the occasion where the spirit of oneness is all pervasive. India with all its diversity (3)\_\_\_\_\_ be seen either rejoicing or moaning depending on the sway of the game (4)\_\_\_\_\_ watched. Unity in diversity is (5)\_\_\_\_\_ in all its glory.

**SubQuestion No : 18**

**Q.18 Select the most appropriate option to fill in blank number 3.**

- Ans  1. could  
 2. shouldn't  
 3. won't  
 4. shan't

Question ID : 26433091790  
Status : Not Answered  
Chosen Option : --

**Comprehension:**

In the following passage, some words have been deleted. Read the passage carefully and select the most appropriate option to fill in each blank.

A beautiful spectacle for anyone to (1)\_\_\_\_\_ would be the crowds that throng to see the Indian cricket team playing, whether it be in India or in other parts of the globe. This (2)\_\_\_\_\_ is the occasion where the spirit of oneness is all pervasive. India with all its diversity (3)\_\_\_\_\_ be seen either rejoicing or moaning depending on the sway of the game (4)\_\_\_\_\_ watched. Unity in diversity is (5)\_\_\_\_\_ in all its glory.

**SubQuestion No : 19**

**Q.19** Select the most appropriate option to fill in blank number 4.

- Ans  1. going  
 2. on  
 3. seeing  
 4. being

Question ID : 26433091791

Status : Not Answered

Chosen Option : --

**Comprehension:**

In the following passage, some words have been deleted. Read the passage carefully and select the most appropriate option to fill in each blank.

A beautiful spectacle for anyone to (1)\_\_\_\_\_ would be the crowds that throng to see the Indian cricket team playing, whether it be in India or in other parts of the globe. This (2)\_\_\_\_\_ is the occasion where the spirit of oneness is all pervasive. India with all its diversity (3)\_\_\_\_\_ be seen either rejoicing or moaning depending on the sway of the game (4)\_\_\_\_\_ watched. Unity in diversity is (5)\_\_\_\_\_ in all its glory.

**SubQuestion No : 20**

**Q.20** Select the most appropriate option to fill in blank number 5.

- Ans  1. redressed  
 2. terraced  
 3. witnessed  
 4. procured

Question ID : 26433091792

Status : Not Answered

Chosen Option : --

Section : Part-D-Hindi

**Q.1** निम्नलिखित वाक्यांशों के लिए उपयुक्त शब्द का चयन विकल्पों में से कीजिए।  
बिजली की तरह चमकने वाला

- Ans  1. जाजुल्यमान  
 2. विद्युतगामी  
 3. विद्युत्प्रभ  
 4. आकाशवृत्ति

Question ID : 26433069996

Status : Answered

Chosen Option : 2

Q.2 नीचे दिए गए वाक्य में रेखांकित अंश के स्थान पर सबसे उपयुक्त विकल्प कौन-सा होगा?  
हमें अपने माता-पिता की शुश्रूषा करनी चाहिए।

- Ans
- 1. सेवा
  - 2. भक्ति
  - 3. गुस्सा
  - 4. नौकरी

Question ID : 26433066715  
Status : Answered  
Chosen Option : 1

Q.3 निम्न वाक्य में रेखांकित शब्द के स्थान पर सर्वोचित विकल्प चुनिए।  
सूखा पड़ गया है, इसलिए इस बार हरियाली कम है।

- Ans
- 1. मेहनत
  - 2. समृद्धि
  - 3. उत्पादन
  - 4. फसल

Question ID : 26433084959  
Status : Answered  
Chosen Option : 4

Q.4 'महाभारत के युद्ध में कृष्ण ने कौरवों की मदद के लिए ग्यारह अक्षोहिणी सेनाएं दी थीं।' वाक्य में अशुद्ध वर्तनी वाला शब्द निम्न में से कौन सा है?

- Ans
- 1. महाभारत
  - 2. कौरवों
  - 3. कृष्ण
  - 4. अक्षोहिणी

Question ID : 26433069697  
Status : Answered  
Chosen Option : 4

Q.5 नीचे दिए गए मुहावरे में रेखांकित अंश के स्थान पर सबसे उपयुक्त विकल्प कौन-सा होगा?  
'एक और एक बारह होना'

- Ans
- 1. ग्यारह
  - 2. दस
  - 3. नौ
  - 4. तेरह

Question ID : 26433066740  
Status : Answered  
Chosen Option : 1

Q.6 निम्नलिखित मुहावरे के लिए उपयुक्त अर्थ क्या होगा?  
उल्टी गंगा बहाना

- Ans  1. नियम के विरुद्ध काम करना  
 2. नदी की धारा को मोड़ देना  
 3. बिना मतलब की बातें करना  
 4. दूसरों की वस्तु चुरा लेना

Question ID : 26433065775  
Status : Answered  
Chosen Option : 1

Q.7 निम्न विकल्पों में से अशुद्ध योगरूढ़ संज्ञा शब्द क्रम पहचानिए।

- Ans  1. लंबाउदर, दशोनन, पीताअंबर  
 2. गिरिधर, पंचानन, नीरद  
 3. पंकज, जलज, चक्रपाणि  
 4. चतुर्भुज, चतुरानन, नीलकंठ

Question ID : 26433079225  
Status : Answered  
Chosen Option : 1

Q.8 निम्न में से किस वाक्य में 'अचल' के सही पर्यायवाची शब्द का प्रयोग हुआ है?

- Ans  1. शुभदा बहुत चंचल है।  
 2. अस्थिरता उसके स्वभाव की विशेषता है।  
 3. उसके चित्त की अवस्था दोलायमान थी।  
 4. वह अपने निर्णय पर अटल रहा।

Question ID : 26433067010  
Status : Answered  
Chosen Option : 4

Q.9 'कौरवों के चक्रव्यूह के कारण अल्पायु में अभिमन्यु को वीरगति मिली।' वाक्य में प्रयुक्त 'अल्पायु' का विलोम शब्द होगा-

- Ans  1. चिरायु  
 2. विरक्ति  
 3. चिरंजीव  
 4. लघुआयु

Question ID : 26433069744  
Status : Answered  
Chosen Option : 1

Q.10 'जिसे जीता न जा सके' वाक्यांश के लिए उचित शब्द बताइए-

- Ans  1. विजयी  
 2. अजेय  
 3. विजेता  
 4. अजातशत्रु

Question ID : 26433065905  
Status : Answered  
Chosen Option : 2

Q.11 निम्नलिखित शब्द के सही वर्तनी वाले पर्यायवाची शब्द का चयन कीजिए।  
किरण

- Ans  1. किरन  
 2. रश्मि  
 3. अंसु  
 4. रस्मि

Question ID : 26433066937  
Status : Answered  
Chosen Option : 2

Q.12 निम्न वाक्य में रिक्त स्थान की पूर्ति उपयुक्त संज्ञा शब्द से करें।  
जीवन में \_\_\_\_\_ होना अति आवश्यक है।

- Ans  1. कोई  
 2. मधुरता  
 3. आप  
 4. अपना

Question ID : 26433085024  
Status : Answered  
Chosen Option : 2

Q.13 उसने तरह – तरह के चमड़े के जूते खरीदे।  
उपरोक्त वाक्य का शुद्ध रूप क्या होगा?

- Ans  1. उसने चमड़े के अलग – अलग जूता खरीदे।  
 2. वह तरह – तरह के चमड़े जूते खरीदे।  
 3. उन्होंने तरह – तरह की चमड़े जूते खरीदी।  
 4. उसने चमड़े के तरह – तरह के जूते खरीदे।

Question ID : 26433079235  
Status : Answered  
Chosen Option : 4

Q.14 निम्नलिखित वाक्यांश के लिए एक सार्थक शब्द चुनिए।  
दूसरों का भला चाहने वाला

- Ans  1. स्वार्थी  
 2. वादी  
 3. परार्थी  
 4. पार्थिव

Question ID : 26433062736  
Status : Answered  
Chosen Option : 3

Q.15 निम्नलिखित वाक्य में रेखांकित शब्द का विलोम बताइए।  
दिनकर समाज के लिए 'परमार्थ' का कार्य करता है।

- Ans  1. स्वार्थ  
 2. निस्वार्थ  
 3. सुकार्य  
 4. सेवक

Question ID : 26433085076  
Status : Answered  
Chosen Option : 4

#### Comprehension:

प्रश्न 1 से 5 तक के उत्तर निम्नांकित गद्यावतरण के आधार पर दीजिए।  
संसार के समस्त जीवों में मनुष्य को श्रेष्ठ माना गया है, क्योंकि वह अन्य जीवों की अपेक्षा अधिक 1. \_\_\_\_\_  
और विवेकशील है। वह केवल वर्तमान की ही नहीं सोचता बल्कि भविष्य के बारे में विचार करता है। वह केवल  
अपनी ओर ध्यान नहीं देता वरन् दूसरों का भी खयाल रखता है। उसमें उचित और अनुचित का ज्ञान कराने वाली  
बुद्धि होती है। इसी आधार पर बुद्धि के दो पक्ष हैं : एक सुबुद्धि और दूसरी दुर्बुद्धि। सुबुद्धि की बड़ी महिमा है।  
इसी को सुमति अर्थात् अच्छी मति भी कहा जाता है। जब तक मनुष्य में सुमति रहती है तब तक उसमें अच्छे –  
बुरे का विवेक भी होता है। जब वह सुमति से हटकर कुमति या दुर्बुद्धि में आ जाता है तब वह बुरे एवं अनुचित  
कार्य में लग जाता है। सुमति के द्वारा 2. \_\_\_\_\_ की भी प्राप्ति होती है अर्थात् उसे धन, सम्मान, स्त्री, पुत्र  
आदि का सुख मिलता है। इन सभी की प्राप्ति विवेक अथवा सुबुद्धि द्वारा संभव है। जो लोग मिल – जुलकर और  
3. \_\_\_\_\_ से कार्य करते हैं उन पर लक्ष्मी की कृपा रहती है। उन्हें सभी की ओर से आदर मिलता है। इससे  
उनमें ऐसी शक्ति पैदा होती है जिससे वे देश, जाति और परिवार को गौरवमय बनाते हैं। सुमति ही सफलता की  
जननी है। जीवन में वही व्यक्ति सफल होता है जो कठिन से कठिन परिस्थितियों में अपनी बुद्धि पर विश्वास रखता  
है तथा है परिश्रम, ईमानदारी और विवेक से काम करता है। सभी का आदर करना, बड़ों के प्रति अप्रिय न  
बोलना, सभी से नम्र और 4. \_\_\_\_\_ बने रहना सुमति के अंतर्गत आते हैं। जहाँ सुमति नहीं रहती वहाँ दंभ,  
अहंकार, क्रोध और अधैर्य का साम्राज्य रहता है। सुमति – हीन लोगों से संपत्ति भी 5. \_\_\_\_\_ दूर रहती है  
और वे विपत्तियों में घिरे रहते हैं।

#### SubQuestion No : 16

Q.16 'बुद्धिमती' के पुल्लिंग शब्द से रिक्त स्थान 1 की पूर्ति कीजिए।

- Ans  1. बुद्धिमान  
 2. बुद्धिजीवी  
 3. बुद्धिवादी  
 4. बुद्धिहीन

Question ID : 26433080951  
Status : Answered  
Chosen Option : 1

**Comprehension:**

प्रश्न 1 से 5 तक के उत्तर निम्नांकित गद्यावतरण के आधार पर दीजिए।  
संसार के समस्त जीवों में मनुष्य को श्रेष्ठ माना गया है, क्योंकि वह अन्य जीवों की अपेक्षा अधिक 1. \_\_\_\_\_ और विवेकशील है। वह केवल वर्तमान की ही नहीं सोचता बल्कि भविष्य के बारे में विचार करता है। वह केवल अपनी ओर ध्यान नहीं देता वरन् दूसरों का भी खयाल रखता है। उसमें उचित और अनुचित का ज्ञान कराने वाली बुद्धि होती है। इसी आधार पर बुद्धि के दो पक्ष हैं : एक सुबुद्धि और दूसरी दुर्बुद्धि। सुबुद्धि की बड़ी महिमा है। इसी को सुमति अर्थात् अच्छी मति भी कहा जाता है। जब तक मनुष्य में सुमति रहती है तब तक उसमें अच्छे – बुरे का विवेक भी होता है। जब वह सुमति से हटकर कुमति या दुर्बुद्धि में आ जाता है तब वह बुरे एवं अनुचित कार्य में लग जाता है। सुमति के द्वारा 2. \_\_\_\_\_ की भी प्राप्ति होती है अर्थात् उसे धन, सम्मान, स्त्री, पुत्र आदि का सुख मिलता है। इन सभी की प्राप्ति विवेक अथवा सुबुद्धि द्वारा संभव है। जो लोग मिल – जुलकर और 3. \_\_\_\_\_ से कार्य करते हैं उन पर लक्ष्मी की कृपा रहती है। उन्हें सभी की ओर से आदर मिलता है। इससे उनमें ऐसी शक्ति पैदा होती है जिससे वे देश, जाति और परिवार को गौरवमय बनाते हैं। सुमति ही सफलता की जननी है। जीवन में वही व्यक्ति सफल होता है जो कठिन से कठिन परिस्थितियों में अपनी बुद्धि पर विश्वास रखता है तथा है परिश्रम, ईमानदारी और विवेक से काम करता है। सभी का आदर करना, बड़ों के प्रति अप्रिय न बोलना, सभी से नम्र और 4. \_\_\_\_\_ बने रहना सुमति के अंतर्गत आते हैं। जहाँ सुमति नहीं रहती वहाँ दंभ, अहंकार, क्रोध और अधैर्य का साम्राज्य रहता है। सुमति – हीन लोगों से संपत्ति भी 5. \_\_\_\_\_ दूर रहती है और वे विपत्तियों में घिरे रहते हैं।

**SubQuestion No : 17**

Q.17 'दौलत' के पर्यायवाची शब्द से रिक्त स्थान 2 की पूर्ति कीजिए।

- Ans
- 1. ऐश - आराम
  - 2. विपत्ति
  - 3. संपत्ति
  - 4. भोग - विलास

Question ID : 26433080952

Status : Answered

Chosen Option : 4

**Comprehension:**

प्रश्न 1 से 5 तक के उत्तर निम्नांकित गद्यावतरण के आधार पर दीजिए।  
संसार के समस्त जीवों में मनुष्य को श्रेष्ठ माना गया है, क्योंकि वह अन्य जीवों की अपेक्षा अधिक 1. \_\_\_\_\_ और विवेकशील है। वह केवल वर्तमान की ही नहीं सोचता बल्कि भविष्य के बारे में विचार करता है। वह केवल अपनी ओर ध्यान नहीं देता वरन् दूसरों का भी खयाल रखता है। उसमें उचित और अनुचित का ज्ञान कराने वाली बुद्धि होती है। इसी आधार पर बुद्धि के दो पक्ष हैं : एक सुबुद्धि और दूसरी दुर्बुद्धि। सुबुद्धि की बड़ी महिमा है। इसी को सुमति अर्थात् अच्छी मति भी कहा जाता है। जब तक मनुष्य में सुमति रहती है तब तक उसमें अच्छे – बुरे का विवेक भी होता है। जब वह सुमति से हटकर कुमति या दुर्बुद्धि में आ जाता है तब वह बुरे एवं अनुचित कार्य में लग जाता है। सुमति के द्वारा 2. \_\_\_\_\_ की भी प्राप्ति होती है अर्थात् उसे धन, सम्मान, स्त्री, पुत्र आदि का सुख मिलता है। इन सभी की प्राप्ति विवेक अथवा सुबुद्धि द्वारा संभव है। जो लोग मिल – जुलकर और 3. \_\_\_\_\_ से कार्य करते हैं उन पर लक्ष्मी की कृपा रहती है। उन्हें सभी की ओर से आदर मिलता है। इससे उनमें ऐसी शक्ति पैदा होती है जिससे वे देश, जाति और परिवार को गौरवमय बनाते हैं। सुमति ही सफलता की जननी है। जीवन में वही व्यक्ति सफल होता है जो कठिन से कठिन परिस्थितियों में अपनी बुद्धि पर विश्वास रखता है तथा है परिश्रम, ईमानदारी और विवेक से काम करता है। सभी का आदर करना, बड़ों के प्रति अप्रिय न बोलना, सभी से नम्र और 4. \_\_\_\_\_ बने रहना सुमति के अंतर्गत आते हैं। जहाँ सुमति नहीं रहती वहाँ दंभ, अहंकार, क्रोध और अधैर्य का साम्राज्य रहता है। सुमति – हीन लोगों से संपत्ति भी 5. \_\_\_\_\_ दूर रहती है और वे विपत्तियों में घिरे रहते हैं।

**SubQuestion No : 18**

Q.18 निम्न विकल्पों में से उपयुक्त प्रत्यय युक्त शब्द से रिक्त स्थान 3 की पूर्ति कीजिए।

- Ans
- 1. ईमानदारी
  - 2. अनुरागी
  - 3. वैरागी
  - 4. चौकीदारी

Question ID : 26433080953

Status : Answered

Chosen Option : 1



**Comprehension:**

प्रश्न 1 से 5 तक के उत्तर निम्नांकित गद्यावतरण के आधार पर दीजिए।  
संसार के समस्त जीवों में मनुष्य को श्रेष्ठ माना गया है, क्योंकि वह अन्य जीवों की अपेक्षा अधिक 1. \_\_\_\_\_  
और विवेकशील है। वह केवल वर्तमान की ही नहीं सोचता बल्कि भविष्य के बारे में विचार करता है। वह केवल  
अपनी ओर ध्यान नहीं देता वरन् दूसरों का भी खयाल रखता है। उसमें उचित और अनुचित का ज्ञान कराने वाली  
बुद्धि होती है। इसी आधार पर बुद्धि के दो पक्ष हैं : एक सुबुद्धि और दूसरी दुर्बुद्धि। सुबुद्धि की बड़ी महिमा है।  
इसी को सुमति अर्थात् अच्छी मति भी कहा जाता है। जब तक मनुष्य में सुमति रहती है तब तक उसमें अच्छे –  
बुरे का विवेक भी होता है। जब वह सुमति से हटकर कुमति या दुर्बुद्धि में आ जाता है तब वह बुरे एवं अनुचित  
कार्य में लग जाता है। सुमति के द्वारा 2. \_\_\_\_\_ की भी प्राप्ति होती है अर्थात् उसे धन, सम्मान, स्त्री, पुत्र  
आदि का सुख मिलता है। इन सभी की प्राप्ति विवेक अथवा सुबुद्धि द्वारा संभव है। जो लोग मिल – जुलकर और  
3. \_\_\_\_\_ से कार्य करते हैं उन पर लक्ष्मी की कृपा रहती है। उन्हें सभी की ओर से आदर मिलता है। इससे  
उनमें ऐसी शक्ति पैदा होती है जिससे वे देश, जाति और परिवार को गौरवमय बनाते हैं। सुमति ही सफलता की  
जननी है। जीवन में वही व्यक्ति सफल होता है जो कठिन से कठिन परिस्थितियों में अपनी बुद्धि पर विश्वास रखता  
है तथा है परिश्रम, ईमानदारी और विवेक से काम करता है। सभी का आदर करना, बड़ों के प्रति अप्रिय न  
बोलना, सभी से नम्र और 4. \_\_\_\_\_ बने रहना सुमति के अंतर्गत आते हैं। जहाँ सुमति नहीं रहती वहाँ दंभ,  
अहंकार, क्रोध और अधैर्य का साम्राज्य रहता है। सुमति – हीन लोगों से संपत्ति भी 5. \_\_\_\_\_ दूर रहती है  
और वे विपत्तियों में घिरे रहते हैं।

**SubQuestion No : 19**

Q.19 निम्नलिखित विकल्पों में से सही शब्द चुनकर रिक्त स्थान 4 की पूर्ति कीजिए।

- Ans  1. अहंकार  
 2. उदार  
 3. निष्ठुर  
 4. अनुदार

Question ID : 26433080954

Status : Answered

Chosen Option : 2

**Comprehension:**

प्रश्न 1 से 5 तक के उत्तर निम्नांकित गद्यावतरण के आधार पर दीजिए।  
संसार के समस्त जीवों में मनुष्य को श्रेष्ठ माना गया है, क्योंकि वह अन्य जीवों की अपेक्षा अधिक 1. \_\_\_\_\_  
और विवेकशील है। वह केवल वर्तमान की ही नहीं सोचता बल्कि भविष्य के बारे में विचार करता है। वह केवल  
अपनी ओर ध्यान नहीं देता वरन् दूसरों का भी खयाल रखता है। उसमें उचित और अनुचित का ज्ञान कराने वाली  
बुद्धि होती है। इसी आधार पर बुद्धि के दो पक्ष हैं : एक सुबुद्धि और दूसरी दुर्बुद्धि। सुबुद्धि की बड़ी महिमा है।  
इसी को सुमति अर्थात् अच्छी मति भी कहा जाता है। जब तक मनुष्य में सुमति रहती है तब तक उसमें अच्छे –  
बुरे का विवेक भी होता है। जब वह सुमति से हटकर कुमति या दुर्बुद्धि में आ जाता है तब वह बुरे एवं अनुचित  
कार्य में लग जाता है। सुमति के द्वारा 2. \_\_\_\_\_ की भी प्राप्ति होती है अर्थात् उसे धन, सम्मान, स्त्री, पुत्र  
आदि का सुख मिलता है। इन सभी की प्राप्ति विवेक अथवा सुबुद्धि द्वारा संभव है। जो लोग मिल – जुलकर और  
3. \_\_\_\_\_ से कार्य करते हैं उन पर लक्ष्मी की कृपा रहती है। उन्हें सभी की ओर से आदर मिलता है। इससे  
उनमें ऐसी शक्ति पैदा होती है जिससे वे देश, जाति और परिवार को गौरवमय बनाते हैं। सुमति ही सफलता की  
जननी है। जीवन में वही व्यक्ति सफल होता है जो कठिन से कठिन परिस्थितियों में अपनी बुद्धि पर विश्वास रखता  
है तथा है परिश्रम, ईमानदारी और विवेक से काम करता है। सभी का आदर करना, बड़ों के प्रति अप्रिय न  
बोलना, सभी से नम्र और 4. \_\_\_\_\_ बने रहना सुमति के अंतर्गत आते हैं। जहाँ सुमति नहीं रहती वहाँ दंभ,  
अहंकार, क्रोध और अधैर्य का साम्राज्य रहता है। सुमति – हीन लोगों से संपत्ति भी 5. \_\_\_\_\_ दूर रहती है  
और वे विपत्तियों में घिरे रहते हैं।

**SubQuestion No : 20**

Q.20 उपयुक्त संधि शब्द से रिक्त स्थान 5 की पूर्ति कीजिए।

- Ans  1. सम् + चय = संचय  
 2. सदा + एव = सदैव  
 3. सम + तोष = संतोष  
 4. सम + योग = संयोग

Question ID : 26433080955

Status : Answered

Chosen Option : 2

## Constable GD in CAPFs SSF Rifleman GD in Assam Rifles and Sepoy in NCB Examination 2022

Roll Number	@Qmaths Telegram Channel
Candidate Name	@Qmaths Telegram Channel
Venue Name	TCS Gito Bitan
Exam Date	23/01/2023
Exam Time	11:45 AM - 12:45 PM
Subject	Constable GD Examination 2022

### Section : Part-A-General Intelligence and Reasoning

Q.1 In a certain code language, 'CHILL' is written as 'HDNHQ' and 'HARSH' is written as 'MWWOM'. How will 'DEVIL' be written in the same code language?

- Ans
- 1. JBECQ
  - 2. IBADQ
  - 3. IAAEQ
  - 4. JAERQ

Question ID : 26433068142  
Status : Answered  
Chosen Option : 3

Q.2 Which of the following terms will replace the question mark (?) in the given series?  
KDN, JEO, GHQ, ?, UTX, LCC

- Ans
- 1. BMT
  - 2. BMS
  - 3. BNT
  - 4. BNN

Question ID : 26433069455  
Status : Not Attempted and Marked For Review  
Chosen Option : --

Q.3 Which of the following numbers will replace the question mark (?) in the given series?  
3, 11, 27, 59 ?

- Ans
- 1. 123
  - 2. 111
  - 3. 118
  - 4. 127

Question ID : 26433067880  
Status : Answered  
Chosen Option : 1

Q.4 A @ B means 'A is the sister of B'.  
A & B means 'A is the brother of B'.  
A # B means 'A is the wife of B'.  
A ^ B means 'A is the mother of B'.  
A + B means 'A is the father of B'.  
If U + Q ^ R @ N & C ^ I @ J # A, then which of the following statements is NOT correct?

- Ans
- 1. A is the son of C.
  - 2. Q is the mother of N.
  - 3. U is the maternal grandfather of R.
  - 4. C is the daughter of Q.

Question ID : 26433068948  
Status : Answered  
Chosen Option : 1

Q.5 Which of the following terms will replace the question mark (?) in the given series?  
NOTK, LQQN, ? , HUKT, FWHW

- Ans
- 1. KSMQ
  - 2. JSMP
  - 3. JSNQ
  - 4. KSNP

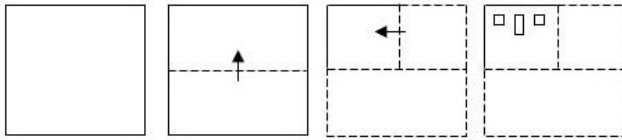
Question ID : 26433068305  
Status : Answered  
Chosen Option : 3

Q.6 In a certain code, 'Love And Light' is written as 513. 'I Love Sugar' is written as 437 and 'Sugar And Spice' is written as 614. What is the digit code for the word 'Love'?

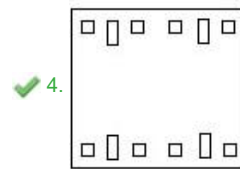
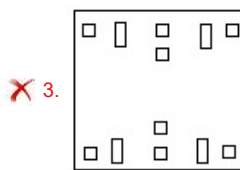
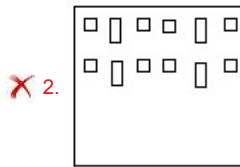
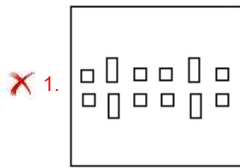
- Ans
- 1. 1
  - 2. 7
  - 3. 4
  - 4. 3

Question ID : 26433090109  
Status : Answered  
Chosen Option : 4

**Q.7** A paper is folded and cut as shown below. How will it appear when unfolded?



**Ans**



Question ID : 26433090956  
 Status : Answered  
 Chosen Option : 4

**Q.8** Three Statements are given followed by Three conclusions numbered I, II and III. Assuming the statements to be true, even if they seem to be at variance with commonly known facts, decide which of the conclusions logically follow(s) from the statements.

**Statements:**

Some fans are big.

All big are coats.

Some coats are flat.

**Conclusions:**

I. All fans are big.

II. Some coats are big.

III. Some flats are coats.

**Ans** ✓ 1. Both conclusions II and III follow.

✗ 2. Both conclusions I and II follow.

✗ 3. Both conclusions I and III follow.

✗ 4. All conclusions follow.

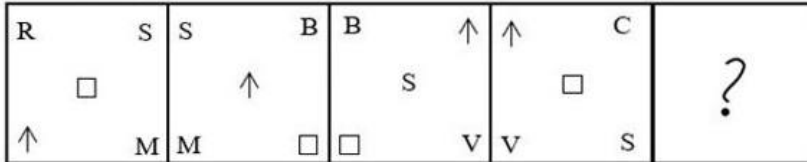
Question ID : 26433074636  
 Status : Answered  
 Chosen Option : 1

**Q.9** Which of the following numbers will replace the question mark (?) in the given series?  
 5, 9, 25, 97, 481, ?

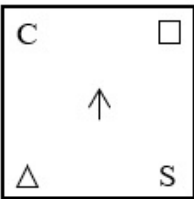
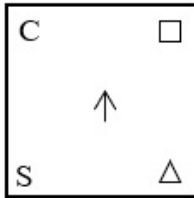
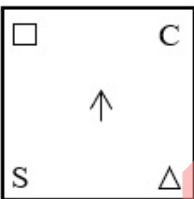
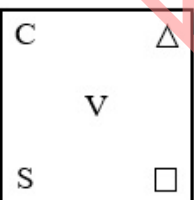
- Ans**  1. 2881  
 2. 2684  
 3. 2788  
 4. 2885

Question ID : 26433085643  
 Status : Answered  
 Chosen Option : 1

**Q.10** Select the figure that will come in place of the question mark (?) in the following figure series.



**Ans**

1. 
2. 
3. 
4. 

Question ID : 26433081695  
 Status : Answered  
 Chosen Option : 4

Q.11 Select the option that is related to the third term in the same way as the second term is related to the first term.

ROSE : 36303810 :: LILY : ?

- Ans
- 1. 34303816
  - 2. 24192456
  - 3. 34363816
  - 4. 24182450

Question ID : 26433057690  
Status : Answered  
Chosen Option : 4

Q.12 Which of the following options represents the correct order of the given words as they would appear in the English dictionary?

1. Leave
2. Learn
3. Leap
4. Lease
5. Least

- Ans
- 1. 3, 2, 4, 1, 5
  - 2. 3, 4, 2, 1, 5
  - 3. 2, 3, 4, 1, 5
  - 4. 3, 2, 4, 5, 1

Question ID : 26433086970  
Status : Answered  
Chosen Option : 4

Q.13 Select the correct combination of mathematical signs to sequentially replace the \* signs and to balance the given equation.

$7 * 10 * 280 * 2 * 10 * 80$

- Ans
- 1.  $\times, =, \div, +, -$
  - 2.  $=, +, \times, +, -$
  - 3.  $\times, +, =, \div, -$
  - 4.  $-, +, \times, \div, =$

Question ID : 26433094995  
Status : Answered  
Chosen Option : 1

Q.14 Select the correct mirror image of the given figure when the mirror is placed at MN as shown below.

B C h 3 5 4 k x

M ————— N

- Ans
- 1. B C h 3 2 4 K X
  - 2. B C 4 3 2 4 K X
  - 3. B C h 3 2 4 K X
  - 4. B C 4 3 2 4 K X

Question ID : 26433080813  
Status : Answered  
Chosen Option : 3

Q.15 Six students are sitting around a circular table facing the centre. A sits to the immediate left of C. E sits third to the right of D. D is an immediate neighbour of C. B is an immediate neighbour of both E and F. Who sits to the immediate right of F?

- Ans
- 1. D
  - 2. C
  - 3. B
  - 4. E

Question ID : 26433079506  
Status : Answered  
Chosen Option : 3

Q.16 Which two signs should be interchanged to make the below equation mathematically correct?

$$124 - 8 + 96 \div 16 \times 20 = 12$$

- Ans
- 1. - and  $\times$
  - 2. - and +
  - 3. + and  $\div$
  - 4.  $\times$  and  $\div$

Question ID : 264330117496  
Status : Answered  
Chosen Option : 2

Q.17 Six friends are sitting in a circle facing the centre. They are P, Q, R, S, T and U. P is the immediate neighbour of T and S. S is sitting to the immediate left of Q. U is sitting to the immediate right of Q. R is the immediate neighbour of U and T. Who is sitting to the immediate right of T?

- Ans
- 1. S
  - 2. R
  - 3. Q
  - 4. P

Question ID : 26433074604  
Status : Answered  
Chosen Option : 4

Q.18 Select the option that is related to the fifth letter-cluster in the same way as the second letter-cluster is related to the first letter-cluster and the fourth letter-cluster is related to the third letter-cluster.

FACTORY : AFTCYRO :: FASHION : AFHSNOI :: EXPLAIN : ?

- Ans
- 1. XELPNIA
  - 2. NIALPXE
  - 3. PLAINEX
  - 4. EXALPNI

Question ID : 26433069634  
Status : Answered  
Chosen Option : 1

**Q.19** Select the set in which the numbers are related in the same way as are the numbers of the following sets.

(NOTE : Operations should be performed on the whole numbers, without breaking down the numbers into its constituent digits. E.g. 13 – Operations on 13 such as adding/subtracting/multiplying etc. to 13 can be performed. Breaking down 13 into 1 and 3 and then performing mathematical operations on 1 and 3 is not allowed)

(6, 9, 324)

(5, 8, 240)

**Ans** ✓ 1. (10, 6, 360)

✗ 2. (9, 4, 232)

✗ 3. (8, 5, 280)

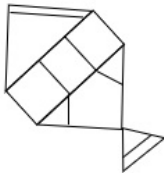
✗ 4. (9, 5, 260)

Question ID : 26433076538

Status : Answered

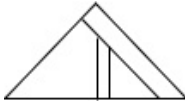
Chosen Option : 1

**Q.20** Select the option figure which is embedded in the given figure. (Rotation is NOT allowed)

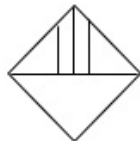


**Ans**

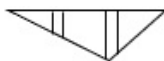
✗ 1.



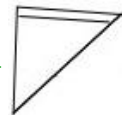
✗ 2.



✗ 3.



✓ 4.



Question ID : 26433069338

Status : Answered

Chosen Option : 4

Section : Part-B-General Knowledge and General awareness

**Q.1** What is the strong, hot and dry local wind that blows in the northern parts of the country in the months of May and June called?

**Ans** ✗ 1. Mango Showers

✗ 2. Cherry Blossoms

✓ 3. Loo

✗ 4. Kalbaisakhi

Question ID : 264330115985

Status : Answered

Chosen Option : 3



**Q.2 What do you call the distance between the centre of the nucleus and the outermost shell of an isolated atom?**

- Ans**  1. Isotope  
 2. Atomic size  
 3. Electron  
 4. Atomic mass

Question ID : 26433087854  
Status : Answered  
Chosen Option : 3

**Q.3 Based on the projects identified in City Water Balance Plans,\_\_\_\_\_ (CWAP) will be devised.**

- Ans**  1. City Water Area Plan  
 2. City Water Action Plan  
 3. Conserve Water Action Plan  
 4. City Water Action Period

Question ID : 264330116182  
Status : Answered  
Chosen Option : 3

**Q.4 Who among the following is believed to be the author of 'Natyashastra'?**

- Ans**  1. Sankara  
 2. Bharata  
 3. Raghava  
 4. Vishnu

Question ID : 26433071448  
Status : Answered  
Chosen Option : 3

**Q.5 Who among the following became Member of Legislative Assembly from Gopalganj, Bihar in India, in November 2022?**

- Ans**  1. Nitish Kumar  
 2. Kusum Devi  
 3. Lalmuni Chaubey  
 4. Narendra Modi

Question ID : 264330114973  
Status : Answered  
Chosen Option : 3

**Q.6 Which article of Indian Constitution is related with the Conduct of business of the Government of a State?**

- Ans**  1. 132  
 2. 178  
 3. 144  
 4. 166

Question ID : 26433089966  
Status : Answered  
Chosen Option : 1

Q.7 The price of one unit of foreign currency in terms of domestic currency is called

- Ans
- 1. fixed exchange rate
  - 2. nominal exchange rate
  - 3. real exchange rate
  - 4. pegged float rate

Question ID : 264330115435  
Status : Answered  
Chosen Option : 2

Q.8 Vempati Chinna Satyam received recognition in which dance form?

- Ans
- 1. Sattriya
  - 2. Mohiniattam
  - 3. Kuchipudi
  - 4. Creative dance

Question ID : 264330115836  
Status : Answered  
Chosen Option : 3

Q.9 Which country has the longest written constitution?

- Ans
- 1. India
  - 2. Indonesia
  - 3. Canada
  - 4. United States of America

Question ID : 264330115618  
Status : Answered  
Chosen Option : 1

Q.10 Match the following:

- a) Cereals and Grains i) lentil
- b) Milk and meat ii) rice
- c) Fats and sugars iii) fish
- d) Pulses and legumes iv) ghee

- Ans
- 1. a-iii, b-iv, c-ii, d-i
  - 2. a-ii, b-iii, c-iv, d-i
  - 3. a-iii, b-i, c-ii, d-iv
  - 4. a-i, b-ii, c-iii, d-iv

Question ID : 264330115219  
Status : Answered  
Chosen Option : 2

Q.11 \_\_\_\_\_ is a kharif crop in north and rabi crop in south India.

- Ans
- 1. Sesamum
  - 2. Mustard
  - 3. Castor
  - 4. Linseed

Question ID : 264330115530  
Status : Answered  
Chosen Option : 3

Q.12 Which of the following spring festivals is celebrated in Goa?

- Ans  1. Shigmo  
 2. Mim Kut  
 3. Losar  
 4. Rouf

Question ID : 264330106219  
Status : Answered  
Chosen Option : 3

Q.13 The width of the lobby marked on the sides of the kabaddi playfield is:

- Ans  1. 2.5 m  
 2. 1.5 m  
 3. 1 m  
 4. 2 m

Question ID : 26433096227  
Status : Answered  
Chosen Option : 3

Q.14 On November 26, 1949, Dr. Rajendra Prasad signed the document as president of the assembly. Which document is being referred to here?

- Ans  1. The Instrument of Accession  
 2. The first Constitution draft  
 3. The Constitution of India  
 4. The Preamble

Question ID : 264330115692  
Status : Answered  
Chosen Option : 3

Q.15 Receipts of the government which create liability or reduce financial assets are termed as \_\_\_\_\_.

- Ans  1. service agreements  
 2. capital receipts  
 3. reserves  
 4. revenue receipts

Question ID : 264330115283  
Status : Answered  
Chosen Option : 3

Q.16 Which Indian state has the lowest population density as per the Census 2011?

- Ans  1. Sikkim  
 2. Nagaland  
 3. Arunachal Pradesh  
 4. Mizoram

Question ID : 264330116045  
Status : Answered  
Chosen Option : 4

Q.17 Who took oath as the new Chief Minister of Maharashtra in June 2022?

- Ans  1. Eknath Sambhaji Shinde  
 2. Prithviraj Chavan  
 3. Uddhav Thackeray  
 4. Devendra Fadnavis

Question ID : 264330114986  
Status : Answered  
Chosen Option : 1

Q.18 Indian weightlifter Saikhom Mirabai Chanu created history in 2021 when she became the first Indian weightlifter to clinch a silver medal at the \_\_\_\_\_.

- Ans  1. Tokyo Olympics  
 2. Netherlands Championship  
 3. Asian Championship  
 4. World Championship in Spain

Question ID : 26433089927  
Status : Answered  
Chosen Option : 1

Q.19 As a country develops, it undergoes 'structural changes'. Which of the following is a indicator of these structural changes?

- Ans  1. The share of the industrial sector in GDP decreases  
 2. The share of agriculture in GDP declines  
 3. The share of agriculture in GDP increases  
 4. The share of agriculture in GDP becomes more than 50 percent

Question ID : 26433090756  
Status : Answered  
Chosen Option : 3

Q.20 Charaka is known as the father of \_\_\_\_\_.

- Ans  1. Yoga  
 2. Indian Raga  
 3. Classical Dance of India  
 4. Ayurveda

Question ID : 26433089864  
Status : Answered  
Chosen Option : 3

Section : Part-C-Elementary Mathematics

Q.1 A person covers a certain distance by bullet train at 84 km/h and returns back to the starting point by bus at a speed of 66 km/h. Find the average speed of the person for the whole journey.

- Ans  1. 74.92 km/h  
 2. 73.92 km/h  
 3. 75.92 km/h  
 4. 72.92 km/h

Question ID : 26433080194  
Status : Answered  
Chosen Option : 2

Q.2 If a shopkeeper wants to give 20% discount on the cost price of the article, then he has to sell it for Rs.400. If he sells it at Rs.520, then his gain percentage is:

- Ans
- 1. 6%
  - 2. 8%
  - 3. 4%
  - 4. 5%

Question ID : 26433066305  
Status : Answered  
Chosen Option : 3

Q.3 Mohan buys a chair at Rs.1,200. If he sells it at Rs.1,440, then what is the profit percentage?

- Ans
- 1. 18%
  - 2. 12%
  - 3. 20%
  - 4. 15%

Question ID : 26433075651  
Status : Answered  
Chosen Option : 3

Q.4 If the curved surface area of a solid right circular cylinder of height  $h$  and radius  $r$  is one-third of its total surface area, then:

- Ans
- 1.  $h = 2r$
  - 2.  $h = r$
  - 3.  $h = \left(\frac{1}{3}\right)r$
  - 4.  $h = \left(\frac{1}{2}\right)r$

Question ID : 26433075280  
Status : Not Answered  
Chosen Option : --

Q.5 Manish can do a piece of work in 7 days while Anil can do the same piece of work in 6 days. The wage for full work is Rs. 390. If they both work together to complete the work, then find the earnings of Manish.

- Ans
- 1. Rs. 400
  - 2. Rs. 180
  - 3. Rs. 200
  - 4. Rs. 500

Question ID : 264330116866  
Status : Answered  
Chosen Option : 2

Q.6 The ratio of expenditure to saving of a person is 7:3. If the income increases by 12% and the expenditure increases by 8%, then by what percentage his savings will increase? (Correct to 2 decimal places)

- Ans
- 1. 23.33 Percent
  - 2. 24.33 Percent
  - 3. 22.33 Percent
  - 4. 21.33 Percent

Question ID : 26433080163  
Status : Answered  
Chosen Option : 4

Q.7 Which of the following pairs represents the co-prime numbers?

- Ans  1. (15, 141)  
 2. (15, 94)  
 3. (15, 235)  
 4. (51, 141)

Question ID : 26433080283  
Status : Answered  
Chosen Option : 2

Q.8 Kunal bought an article and sold it at a loss of 15%. If he had bought it for 18% less and sold it for ₹108 more, then he would have had a profit of 30%. Find the cost price of the article.

- Ans  1. ₹540  
 2. ₹560  
 3. ₹570  
 4. ₹500

Question ID : 26433080165  
Status : Not Attempted and Marked For Review  
Chosen Option : --

Q.9 The smallest number that is exactly divisible by 12, 15, 18 and 27 is:

- Ans  1. 508  
 2. 680  
 3. 540  
 4. 740

Question ID : 26433091500  
Status : Answered  
Chosen Option : 3

Q.10 A bag contains 50 kg of pulses. There are three pulses, A, B, and C, mixed in it in the ratio of 4 : 3 : 3. The prices of pulses A, B, and C are ₹80 per kg, ₹60 per kg and ₹80 per kg respectively. What will be the average cost of 1 kg mixture of pulses?

- Ans  1. ₹74  
 2. ₹80  
 3. ₹70  
 4. ₹72

Question ID : 26433082499  
Status : Answered  
Chosen Option : 1

**Q.11** In a circular race of 625 m, A and B start from the same point, at the same time and at speeds of 90 km/h and 72 km/h, respectively. After how much time will they meet again for the first time on the track if they are running in the same directions?

- Ans**
- 1. In 115 seconds
  - 2. In 122 seconds
  - 3. In 125 seconds
  - 4. In 120 seconds

Question ID : 26433076383  
Status : Answered  
Chosen Option : 3

**Q.12** 615 coins consist of one rupee, 50 paise and 25 paise coins. Their values are in the ratio of 3 : 5 : 7, respectively. Find the number of 50 paise coins.

- Ans**
- 1. 150
  - 2. 180
  - 3. 160
  - 4. 170

Question ID : 26433080179  
Status : Answered  
Chosen Option : 1

**Q.13** Find the volume of a right circular cylinder whose curved surface area is 1012 cm<sup>2</sup> and circumference of base is 22 cm. (Use  $\pi = 22/7$ )

- Ans**
- 1. 1771 cm<sup>3</sup>
  - 2. 1672 cm<sup>3</sup>
  - 3. 1487 cm<sup>3</sup>
  - 4. 1325 cm<sup>3</sup>

Question ID : 26433066326  
Status : Not Answered  
Chosen Option : --

**Q.14** What is the yearly rate of compound interest, compounding annually at which a principal becomes Rs.500 in two years and Rs.700 in three years?

- Ans**
- 1. 32%
  - 2. 38%
  - 3. 40%
  - 4. 35%

Question ID : 26433080337  
Status : Answered  
Chosen Option : 1

**Q.15** If 30 copies of a compact disc (CD) cost Rs.140, how much will 24 copies of the same CD cost?

- Ans**
- 1. Rs.121
  - 2. Rs.112
  - 3. Rs.101
  - 4. Rs.110

Question ID : 26433080330  
Status : Answered  
Chosen Option : 2

Q.16 The marked price of a fan is Rs. 1850 and the shopkeeper allows a discount of 9.5 percent on it. The selling price of the fan is:

- Ans
- 1. Rs. 1580.60
  - 2. Rs. 1674.25
  - 3. Rs. 1448.80
  - 4. Rs. 1752.50

Question ID : 264330116751  
Status : Answered  
Chosen Option : 2

Q.17 Jaishankar borrowed a sum of money from his employer at the rate of 8% per annum compound interest, compounded annually. He would have to pay ₹58,320 after a period of two years to finish the loan. How much did he borrow?

- Ans
- 1. ₹50,000
  - 2. ₹50,100
  - 3. ₹51,000
  - 4. ₹49,900

Question ID : 26433091623  
Status : Answered  
Chosen Option : 1

Q.18 Rabia can finish a work in 12 days. Sarita can finish the same work in 18 days. In how many days will the work be finished if they work together?

- Ans
- 1.  $6\frac{2}{10}$
  - 2.  $7\frac{2}{10}$
  - 3.  $\frac{10}{72}$
  - 4.  $7\frac{4}{10}$

Question ID : 26433080382  
Status : Answered  
Chosen Option : 2

Q.19 A man's working hours per day were increased by 25% and his wages per hour were increased by 20%. By how much percent were his daily earnings increased?

- Ans
- 1. 40%
  - 2. 35%
  - 3. 50%
  - 4. 45%

Question ID : 26433080357  
Status : Not Answered  
Chosen Option : --



**Q.20** A person drives a car for 4 hours at the speed of 75 kmph and for next 6 hours at the speed of 90 kmph. Find the average speed of the car during the entire journey.

- Ans**
- 1. 84 kmph
  - 2. 80 kmph
  - 3. 85 kmph
  - 4. 82.50 kmph

Question ID : 264330116690  
Status : Not Answered  
Chosen Option : --

Section : Part-D-English

**Q.1** Select the most appropriate meaning of the given idiom.

**Hit the sack**

- Ans**
- 1. To go to bed in order to read
  - 2. To go to bed in order to write
  - 3. To go to bed in order to sleep
  - 4. Go to bed in order to sit

Question ID : 26433073647  
Status : Answered  
Chosen Option : 3

**Q.2** Select the INCORRECTLY spelt word.

- Ans**
- 1. Cognisant
  - 2. Troublesome
  - 3. Pathetic
  - 4. Hierarchial

Question ID : 26433073658  
Status : Answered  
Chosen Option : 1

**Q.3** Complete the sentence with the most appropriate synonym of the word in brackets.

Tell everyone to clear the \_\_\_\_\_ (hallway) as the bride and her father have arrived.

- Ans**
- 1. driveway
  - 2. aisle
  - 3. stage
  - 4. avenue

Question ID : 26433089753  
Status : Answered  
Chosen Option : 2

**Q.4** Identify the correctly spelt sentence.

- Ans**
- 1. He is a leading manufakturer in the clothing industry.
  - 2. He is a leading manufacturer in the clothing endustry.
  - 3. He is a leading manufacturer in the clothing industry.
  - 4. He is a leading manufacturer in the clothing indosty.

Question ID : 26433072827  
Status : Answered  
Chosen Option : 3

Q.5 Select the most appropriate ANTONYM of the given word.

Shabby

- Ans  1. Dilapidated  
 2. Miserable  
 3. Respectable  
 4. Impoverished

Question ID : 26433073572  
Status : Not Answered  
Chosen Option : --

Q.6 Select the most appropriate alternative to replace the underlined segment in the given sentence.

They met yesterday, haven't they?

- Ans  1. isn't it?  
 2. don't they?  
 3. did they?  
 4. didn't they?

Question ID : 26433092352  
Status : Answered  
Chosen Option : 2

Q.7 Select the most appropriate ANTONYM of the word given in the bracket to fill in the blank.

His \_\_\_\_\_ (repulsive) behaviour could not be ignored.

- Ans  1. logical  
 2. innocuous  
 3. ambitious  
 4. faithful

Question ID : 26433060326  
Status : Answered  
Chosen Option : 2

Q.8 Which of the following options is most similar in meaning to the given word?

Allude

- Ans  1. Tell  
 2. Refer  
 3. Demonstrate  
 4. Instruct

Question ID : 26433088810  
Status : Not Answered  
Chosen Option : --

**Q.9** Select the most appropriate option that can substitute the underlined segment in the given sentence.

Prime Minister Narendra Modi paid tribute to Pandit Jawaharlal Nehru on his death day.

- Ans
- 1. death anniversary
  - 2. death ceremony
  - 3. death festivity
  - 4. death recurrence

Question ID : 26433088164  
Status : **Answered**  
Chosen Option : 1

**Q.10** Replace the word in bold in the given sentence with its ANTONYM.

Reforms were also made in the **tedious** technicalities of the feudal law.

- Ans
- 1. drab
  - 2. tiring
  - 3. exciting
  - 4. boring

Question ID : 26433072157  
Status : **Not Answered**  
Chosen Option : --

**Q.11** Select the most appropriate option to fill in the blank.

His ashes were deposited in a golden \_\_\_\_\_.

- Ans
- 1. earn
  - 2. urn
  - 3. yearn
  - 4. years

Question ID : 26433090385  
Status : **Answered**  
Chosen Option : 4

**Q.12** Select the most appropriate synonym of the given word.

Sailor

- Ans
- 1. Prosecutor
  - 2. Enterpriser
  - 3. Mariner
  - 4. Trainer

Question ID : 26433089340  
Status : **Not Answered**  
Chosen Option : --

**Q.13** Select the most appropriate option to substitute the underlined segment in the given sentence.

Guess that vessel holds the least water?

- Ans
- 1. vessel which holds
  - 2. which vessel hold
  - 3. that vessel hold
  - 4. which vessel holds

Question ID : 26433093020  
Status : Answered  
Chosen Option : 2

**Q.14** The following sentence has been split into four segments. Identify the segment that contains a grammatical error.

I hope / you will / helped me / this weekend.

- Ans
- 1. I hope
  - 2. helped me
  - 3. you will
  - 4. this weekend

Question ID : 26433092273  
Status : Answered  
Chosen Option : 3

**Q.15** Select the most appropriate meaning of the given idiom.

Out of the woods

- Ans
- 1. Risking life
  - 2. Being arrogant
  - 3. Not in danger
  - 4. Always happy

Question ID : 26433072279  
Status : Answered  
Chosen Option : 4

**Comprehension:**

In the following passage some words have been deleted. Fill in the blanks with the help of the alternatives given. Select the most appropriate option for each number.

I hope you will find this series (1)\_\_\_\_\_ in developing language skills of the learners through diverse reading (2)\_\_\_\_\_ such as fairy tales, fables, classics, adventure, biography, drama and so on. The prose pieces (3)\_\_\_\_\_ for intensive language study while the poems (4)\_\_\_\_\_ enable children to develop an ear for (5)\_\_\_\_\_ and rhythm.

**SubQuestion No : 16**

**Q.16** Select the most appropriate option to fill in blank 1.

- Ans
- 1. helpful
  - 2. demanding
  - 3. distasteful
  - 4. challenging

Question ID : 26433093027  
Status : Answered  
Chosen Option : 1

**Comprehension:**

In the following passage some words have been deleted. Fill in the blanks with the help of the alternatives given. Select the most appropriate option for each number.

I hope you will find this series (1)\_\_\_\_\_ in developing language skills of the learners through diverse reading (2)\_\_\_\_\_ such as fairy tales, fables, classics, adventure, biography, drama and so on. The prose pieces (3)\_\_\_\_\_ for intensive language study while the poems (4)\_\_\_\_\_ enable children to develop an ear for (5)\_\_\_\_\_ and rhythm.

**SubQuestion No : 17**

**Q.17 Select the most appropriate option to fill in blank 2.**

- Ans  1. habits  
 2. papers  
 3. genres  
 4. mediums

Question ID : 26433093028  
Status : Answered  
Chosen Option : 1

**Comprehension:**

In the following passage some words have been deleted. Fill in the blanks with the help of the alternatives given. Select the most appropriate option for each number.

I hope you will find this series (1)\_\_\_\_\_ in developing language skills of the learners through diverse reading (2)\_\_\_\_\_ such as fairy tales, fables, classics, adventure, biography, drama and so on. The prose pieces (3)\_\_\_\_\_ for intensive language study while the poems (4)\_\_\_\_\_ enable children to develop an ear for (5)\_\_\_\_\_ and rhythm.

**SubQuestion No : 18**

**Q.18 Select the most appropriate option to fill in blank 3.**

- Ans  1. were given  
 2. are deleted  
 3. are meant  
 4. will be added

Question ID : 26433093029  
Status : Answered  
Chosen Option : 3

**Comprehension:**

In the following passage some words have been deleted. Fill in the blanks with the help of the alternatives given. Select the most appropriate option for each number.

I hope you will find this series (1)\_\_\_\_\_ in developing language skills of the learners through diverse reading (2)\_\_\_\_\_ such as fairy tales, fables, classics, adventure, biography, drama and so on. The prose pieces (3)\_\_\_\_\_ for intensive language study while the poems (4)\_\_\_\_\_ enable children to develop an ear for (5)\_\_\_\_\_ and rhythm.

**SubQuestion No : 19**

**Q.19 Select the most appropriate option to fill in blank 4.**

- Ans  1. was  
 2. will  
 3. is  
 4. has

Question ID : 26433093030  
Status : Answered  
Chosen Option : 2

**Comprehension:**

In the following passage some words have been deleted. Fill in the blanks with the help of the alternatives given. Select the most appropriate option for each number.

I hope you will find this series (1)\_\_\_\_\_ in developing language skills of the learners through diverse reading (2)\_\_\_\_\_ such as fairy tales, fables, classics, adventure, biography, drama and so on. The prose pieces (3)\_\_\_\_\_ for intensive language study while the poems (4)\_\_\_\_\_ enable children to develop an ear for (5)\_\_\_\_\_ and rhythm.

**SubQuestion No : 20****Q.20 Select the most appropriate option to fill in blank 5.**

- Ans  1. personification  
 2. simile  
 3. onomatopoeia  
 4. rhyme

Question ID : 26433093031  
Status : Answered  
Chosen Option : 3

**Section : Part-D-Hindi****Q.1 'वह व्यक्ति जो काव्य अथवा कविता की रचना करता हो' वाक्यांश के लिए सार्थक शब्द है-**

- Ans  1. कटु  
 2. कल्प  
 3. कपि  
 4. कवि

Question ID : 26433062231  
Status : Not Answered  
Chosen Option : --

**Q.2 मुहावरों और उनके अर्थ का निम्नलिखित में से कौन सा युग्म अशुद्ध है?**

- Ans  1. हाथ का मैल- तुच्छ वस्तु  
 2. हाथ पैर मारना- प्रयत्न करना  
 3. सर खपाना- दिमाग लगाना  
 4. लकीर का फकीर- प्रगतिशील होना

Question ID : 26433062556  
Status : Not Answered  
Chosen Option : --

**Q.3 निम्न शब्दों में से उचित शब्द का प्रयोग करके दिए गए वाक्य के रिक्त स्थान की पूर्ति कीजिए। आपको क्या पता कि उसने मेरे साथ क्या \_\_\_\_\_ की?**

- Ans  1. कठिनाई  
 2. खूबी  
 3. विशेषता  
 4. भलाई

Question ID : 26433074417  
Status : Not Answered  
Chosen Option : --

Q.4 जल ही जीवन है।  
उपरोक्त वाक्य में रेखांकित शब्द के पर्यायवाची शब्द का चयन विकल्पों में से कीजिए।

- Ans  1. दृग  
 2. मतंग  
 3. हर  
 4. पानी

Question ID : 26433079617  
Status : Not Answered  
Chosen Option : --

Q.5 निम्नलिखित में से कौन सा एक कारक चिन्ह नहीं है?

- Ans  1. द्वारा  
 2. जाना  
 3. के लिए  
 4. पर

Question ID : 26433085028  
Status : Not Answered  
Chosen Option : --

Q.6 'भोजन बहुत सुन्दर बना है।' इस वाक्य में रेखांकित शब्द के स्थान पर उपयुक्त शब्द क्या होगा?

- Ans  1. बेहतर  
 2. स्वादिष्ट  
 3. खूबसूरत  
 4. उन्नत

Question ID : 26433066799  
Status : Not Answered  
Chosen Option : --

Q.7 निम्नलिखित विकल्पों में से कौन सा एक निजवाचक सर्वनाम का वाक्य नहीं है?

- Ans  1. ये फाइलें मैं अपने आप देखूँगा।  
 2. यह सब वे अपने आप देख लेंगे।  
 3. वे अपने आपही यह जिम्मेदारी सँभालने की तैयार हो गए।  
 4. आप कुछ पूछना चाहते हैं?

Question ID : 26433091240  
Status : Not Answered  
Chosen Option : --

Q.8 निम्न में से कौन-सा शब्द 'अर्जुन' शब्द का पर्यायवाची शब्द है?

- Ans  1. विनायक  
 2. सव्यसाची  
 3. जगन्नाथ  
 4. अमरपति

Question ID : 26433067074  
Status : Not Answered  
Chosen Option : --

Q.9 'जिसका कोई नाथ न हो' वाक्यांश के लिए सार्थक शब्द है-

- Ans  1. नाथ  
 2. नास्तिक  
 3. अनाथ  
 4. सनाथ

Question ID : 26433065861  
Status : Not Answered  
Chosen Option : --

Q.10 "गुरु हथौड़े से वह प्रहार कर रहा था।"

उक्त वाक्य में प्रयुक्त 'गुरु' के स्थान पर उसके विलोम शब्द का प्रयोग निम्न में से किस वाक्य में किया गया है?

- Ans  1. वजनदार हथौड़े से वह प्रहार कर रहा था।  
 2. लघु हथौड़े से वह प्रहार कर रहा था।  
 3. भारी हथौड़े से वह प्रहार कर रहा था।  
 4. बड़े हथौड़े से वह प्रहार कर रहा था।

Question ID : 26433067022  
Status : Not Answered  
Chosen Option : --

Q.11 निम्नलिखित वाक्य में से अशुद्धि पहचानें-  
तुम लोग कुते की मौत मरोगे।

- Ans  1. तुम  
 2. मरोगे  
 3. मौत  
 4. कुते

Question ID : 26433066830  
Status : Not Answered  
Chosen Option : --

Q.12 "सुयश अमेरिका गया होगा।"

उपरोक्त वाक्य को पूर्ण भूतकाल का प्रयोग करते हुए पुनः लिखिए।

- Ans  1. सुयश अमेरिका जा रहा था।  
 2. सुयश अमेरिका गया था।  
 3. सुयश अमेरिका जाएगा।  
 4. सुयश अमेरिका गया है।

Question ID : 26433066981  
Status : Not Answered  
Chosen Option : --

Q.13 निम्नलिखित वाक्यांश के लिए एक सार्थक शब्द क्या होगा?  
गज के समान गति से चलने वाली

- Ans  1. मृणालकान्ति  
 2. गजगामिनी  
 3. हंसवाहिनी  
 4. मृगनयनी

Question ID : 26433069989  
Status : Not Answered  
Chosen Option : --



Q.14 निम्नलिखित वाक्य के किस खंड में अशुद्धि है?  
आप अपनी कार को भी ले आना।

- Ans
- 1. आना
  - 2. आप
  - 3. को भी
  - 4. अपनी

Question ID : 26433066754  
Status : Not Answered  
Chosen Option : --

Q.15 ' \_\_\_\_\_ भर पानी में डूब मरना।'   
मुहावरे में रिक्त स्थान की पूर्ति उपयुक्त शब्द द्वारा कीजिए।

- Ans
- 1. सूखे
  - 2. चुल्लू
  - 3. बाल्टी
  - 4. तालाब

Question ID : 26433069686  
Status : Not Answered  
Chosen Option : --

**Comprehension:**

प्रश्न संख्या 1-5 के उत्तर निम्न गद्यांश के आधार पर दीजिए।

गुरु नानक ने प्रेम का संदेश दिया है उनका कथन था कि ईश्वर नाम के सम्मुख जाति और कुल के बंधन (1) \_\_\_\_\_ हैं, क्योंकि मनुष्य जीवन का जो चरम प्राप्तव्य है वह स्वयं प्रेमरूप है प्रेम ही उसका स्वभाव है, (2) \_\_\_\_\_ ही उसका साधन है अरे ओ मुग्ध मनुष्य, सच्ची प्रीति से ही तेरा मान-अभिमान नष्ट होगा, तेरी छोटाई की सीमा (3) \_\_\_\_\_ होगी, परम मंगलमय शिव तुझे प्राप्त होगा उसी सच्चे प्रेम की साधना ही तेरे जीवन का परम लक्ष्य है बाह्य (4) \_\_\_\_\_ को तू धर्म समझ रहा है मूल संस्कारों को तू आस्था मानता है नहीं प्यारे, यह सब धर्म नहीं है धर्म तो स्वयं रूप होकर भगवान के रूप में तेरे भीतर (5) \_\_\_\_\_ है उनका मत था कि विश्व का परित्याग कर सन्यास लेना ईश्वर की दृष्टि में आवश्यक नहीं है उसके लिए तो धार्मिक सन्यासी तथा भक्त व गृहस्थ सभी समान हैं।

**SubQuestion No : 16**

Q.16 रिक्त स्थान (1) के लिए सर्वाधिक उपयुक्त शब्द इनमें से कौन सा होगा?

- Ans
- 1. अनिवार्य
  - 2. जरूरी
  - 3. निरर्थक
  - 4. सार्थक

Question ID : 26433092232  
Status : Not Answered  
Chosen Option : --

**Comprehension:**

प्रश्न संख्या 1-5 के उत्तर निम्न गद्यांश के आधार पर दीजिए।

गुरु नानक ने प्रेम का संदेश दिया है उनका कथन था कि ईश्वर नाम के सम्मुख जाति और कुल के बंधन (1) \_\_\_\_\_ हैं, क्योंकि मनुष्य जीवन का जो चरम प्राप्तव्य है वह स्वयं प्रेमरूप है प्रेम ही उसका स्वभाव है, (2) \_\_\_\_\_ ही उसका साधन है अरे ओ मुग्ध मनुष्य, सच्ची प्रीति से ही तेरा मान-अभिमान नष्ट होगा, तेरी छोटाई की सीमा (3) \_\_\_\_\_ होगी, परम मंगलमय शिव तुझे प्राप्त होगा उसी सच्चे प्रेम की साधना ही तेरे जीवन का परम लक्ष्य है बाह्य (4) \_\_\_\_\_ को तू धर्म समझ रहा है मूल संस्कारों को तू आस्था मानता है नहीं प्यारे, यह सब धर्म नहीं है धर्म तो स्वयं रूप होकर भगवान के रूप में तेरे भीतर (5) \_\_\_\_\_ है उनका मत था कि विश्व का परित्याग कर सन्यास लेना ईश्वर की दृष्टि में आवश्यक नहीं है उसके लिए तो धार्मिक सन्यासी तथा भक्त व गृहस्थ सभी समान हैं।

**SubQuestion No : 17**

Q.17 रिक्त स्थान (2) के लिए सर्वाधिक उपयुक्त शब्द इनमें से कौन सा होगा?

- Ans
- 1. शत्रुता
  - 2. घृणा
  - 3. प्रेम
  - 4. गुस्सा

Question ID : 26433092233

Status : Not Answered

Chosen Option : --

**Comprehension:**

प्रश्न संख्या 1-5 के उत्तर निम्न गद्यांश के आधार पर दीजिए।

गुरु नानक ने प्रेम का संदेश दिया है उनका कथन था कि ईश्वर नाम के सम्मुख जाति और कुल के बंधन (1) \_\_\_\_\_ हैं, क्योंकि मनुष्य जीवन का जो चरम प्राप्तव्य है वह स्वयं प्रेमरूप है प्रेम ही उसका स्वभाव है, (2) \_\_\_\_\_ ही उसका साधन है अरे ओ मुग्ध मनुष्य, सच्ची प्रीति से ही तेरा मान-अभिमान नष्ट होगा, तेरी छोटाई की सीमा (3) \_\_\_\_\_ होगी, परम मंगलमय शिव तुझे प्राप्त होगा उसी सच्चे प्रेम की साधना ही तेरे जीवन का परम लक्ष्य है बाह्य (4) \_\_\_\_\_ को तू धर्म समझ रहा है मूल संस्कारों को तू आस्था मानता है नहीं प्यारे, यह सब धर्म नहीं है धर्म तो स्वयं रूप होकर भगवान के रूप में तेरे भीतर (5) \_\_\_\_\_ है उनका मत था कि विश्व का परित्याग कर सन्यास लेना ईश्वर की दृष्टि में आवश्यक नहीं है उसके लिए तो धार्मिक सन्यासी तथा भक्त व गृहस्थ सभी समान हैं।

**SubQuestion No : 18**

Q.18 रिक्त स्थान (3) के लिए सर्वाधिक उपयुक्त शब्द इनमें से कौन सा होगा?

- Ans
- 1. समाप्त
  - 2. प्रगति
  - 3. शुरू
  - 4. उद्भव

Question ID : 26433092234

Status : Not Answered

Chosen Option : --

**Comprehension:**

प्रश्न संख्या 1-5 के उत्तर निम्न गद्यांश के आधार पर दीजिए।

गुरु नानक ने प्रेम का संदेश दिया है उनका कथन था कि ईश्वर नाम के सम्मुख जाति और कुल के बंधन (1) \_\_\_\_\_ हैं, क्योंकि मनुष्य जीवन का जो चरम प्राप्तव्य है वह स्वयं प्रेमरूप है प्रेम ही उसका स्वभाव है, (2) \_\_\_\_\_ ही उसका साधन है अरे ओ मुग्ध मनुष्य, सच्ची प्रीति से ही तेरा मान-अभिमान नष्ट होगा, तेरी छोटाई की सीमा (3) \_\_\_\_\_ होगी, परम मंगलमय शिव तुझे प्राप्त होगा उसी सच्चे प्रेम की साधना ही तेरे जीवन का परम लक्ष्य है बाह्य (4) \_\_\_\_\_ को तू धर्म समझ रहा है मूल संस्कारों को तू आस्था मानता है नहीं प्यारे, यह सब धर्म नहीं है धर्म तो स्वयं रूप होकर भगवान के रूप में तेरे भीतर (5) \_\_\_\_\_ है उनका मत था कि विश्व का परित्याग कर सन्यास लेना ईश्वर की दृष्टि में आवश्यक नहीं है उसके लिए तो धार्मिक सन्यासी तथा भक्त व गृहस्थ सभी समान हैं।

**SubQuestion No : 19**

**Q.19 रिक्त स्थान (4) के लिए सर्वाधिक उपयुक्त शब्द इनमें से कौन सा होगा?**

- Ans**
- 1. संस्कारों
  - 2. विश्वासों
  - 3. आडंबरों
  - 4. नीतियों

Question ID : 26433092235

Status : Not Answered

Chosen Option : --

**Comprehension:**

प्रश्न संख्या 1-5 के उत्तर निम्न गद्यांश के आधार पर दीजिए।

गुरु नानक ने प्रेम का संदेश दिया है उनका कथन था कि ईश्वर नाम के सम्मुख जाति और कुल के बंधन (1) \_\_\_\_\_ हैं, क्योंकि मनुष्य जीवन का जो चरम प्राप्तव्य है वह स्वयं प्रेमरूप है प्रेम ही उसका स्वभाव है, (2) \_\_\_\_\_ ही उसका साधन है अरे ओ मुग्ध मनुष्य, सच्ची प्रीति से ही तेरा मान-अभिमान नष्ट होगा, तेरी छोटाई की सीमा (3) \_\_\_\_\_ होगी, परम मंगलमय शिव तुझे प्राप्त होगा उसी सच्चे प्रेम की साधना ही तेरे जीवन का परम लक्ष्य है बाह्य (4) \_\_\_\_\_ को तू धर्म समझ रहा है मूल संस्कारों को तू आस्था मानता है नहीं प्यारे, यह सब धर्म नहीं है धर्म तो स्वयं रूप होकर भगवान के रूप में तेरे भीतर (5) \_\_\_\_\_ है उनका मत था कि विश्व का परित्याग कर सन्यास लेना ईश्वर की दृष्टि में आवश्यक नहीं है उसके लिए तो धार्मिक सन्यासी तथा भक्त व गृहस्थ सभी समान हैं।

**SubQuestion No : 20**

**Q.20 रिक्त स्थान (5) के लिए सर्वाधिक उपयुक्त शब्द इनमें से कौन सा होगा?**

- Ans**
- 1. विराजमान
  - 2. साधना
  - 3. गायब
  - 4. बाहर

Question ID : 26433092236

Status : Not Answered

Chosen Option : --

# Constable GD in CAPFs SSF Rifleman GD in Assam Rifles and Sepoy in NCB Examination 2022

Roll Number	KD Job Updates
Candidate Name	KD Job Updates
Venue Name	Gyansthal Mahavidyalaya
Exam Date	23/01/2023
Exam Time	2:30 PM - 3:30 PM
Subject	Constable GD Examination 2022

Section : Part-A-General Intelligence and Reasoning

Q.1 Which of the following numbers will replace the question mark (?) in the given series?  
2, 12, 36, ?, 150, 252

- Ans
- 1. 30
  - 2. 60
  - 3. 50
  - 4. 80

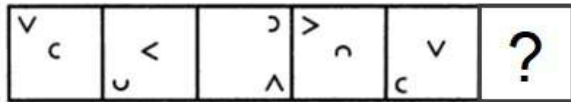
Question ID : 26433085351  
Status : Not Answered  
Chosen Option : --

Q.2 'A + B' means 'A is the father of B'  
'A - B' means 'A is the wife of B'  
'A × B' means 'A is the brother of B'  
'A ÷ B' means 'A is the daughter of B'  
If 'P - R × Q + S', then which of the following statements is true?

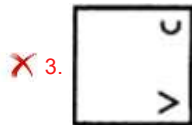
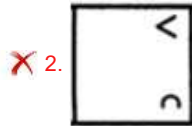
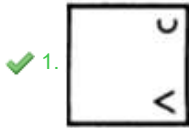
- Ans
- 1. P is the sister-in-law of R.
  - 2. P is the sister-in-law of Q.
  - 3. Q is the sister-in-law of P.
  - 4. P is the sister-in-law of S.

Question ID : 26433082759  
Status : Answered  
Chosen Option : 2

**Q.3** Select the figure from among the given options that can replace the question mark (?) in the following series.



Ans



Question ID : 26433080502

Status : Answered

Chosen Option : 1

**Q.4** Which of the following terms will replace the question mark (?) in the given series?  
XFCJ, ADFH, ?, GZLD, JXOB

Ans ✓ 1. DBIF

✗ 2. BDFI

✗ 3. FBFI

✗ 4. XDFI

Question ID : 26433068982

Status : Answered

Chosen Option : 1

**Q.5** Select the set in which the numbers are related in the same way as are the numbers of the following sets.

(NOTE : Operations should be performed on the whole numbers, without breaking down the numbers into its constituent digits. E.g. 13 – Operations on 13 such as adding/subtracting/multiplying etc. to 13 can be performed. Breaking down 13 into 1 and 3 and then performing mathematical operations on 1 and 3 is not allowed)

(4, 8, 256)

(2, 9, 144)

Ans ✓ 1. (6, 9, 432)

✗ 2. (4, 9, 258)

✗ 3. (8, 5, 340)

✗ 4. (3, 7, 162)

Question ID : 26433076539

Status : Not Answered

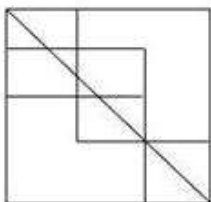
Chosen Option : --

Q.6 Select the option in which the given figure is embedded (rotation is NOT allowed).

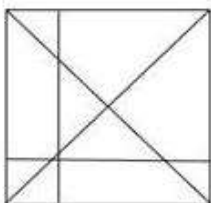


Ans

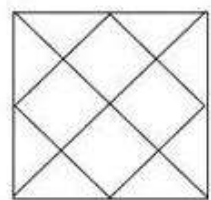
✗ 1.



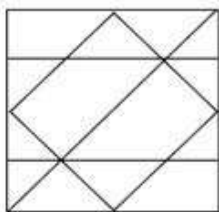
✗ 2.



✓ 3.



✗ 4.



Question ID : 26433076719

Status : Answered

Chosen Option : 3

Q.7 Select the option that is related to the third word in the same way as the second word is related to the first word. (The words must be considered as meaningful English words and must not be related to each other based on the number of letters/number of consonants/vowels in the word)

Cup : Crockery :: Sharpener : ?

Ans ✗ 1. Eraser

✓ 2. Stationery

✗ 3. Dust

✗ 4. Furniture

Question ID : 26433082933

Status : Answered

Chosen Option : 2

Q.8 Select the option that is related to the third term in the same way as the second term is related to the first term.

APTITUDE : BQUJUVEF :: ANALOGY : ?

- Ans
- 1. ZNZMOGY
  - 2. BOBMPHZ
  - 3. YGOLANA
  - 4. LOANAYG

Question ID : 26433057692  
Status : Answered  
Chosen Option : 2

Q.9 Select the correct mirror image of the given figure when the mirror is placed at MN as shown below.

x c U Q d h k  
M ————— N

- Ans
- 1. k h b Q U c x
  - 2. x c n σ q μ k
  - 3. x c n σ q μ k
  - 4. x c n ð q y k

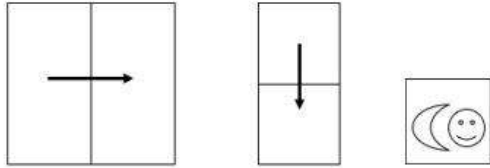
Question ID : 26433080814  
Status : Answered  
Chosen Option : 3

Q.10 Select the letter-cluster from among the given options that can replace the question mark (?) in the following series.  
STOP, VVSU, YXWZ, ?, EBEJ

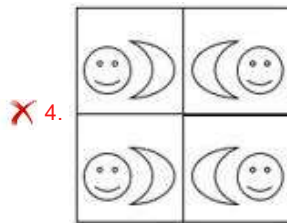
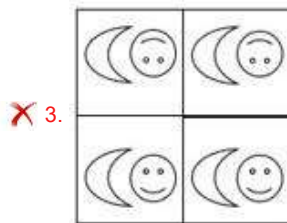
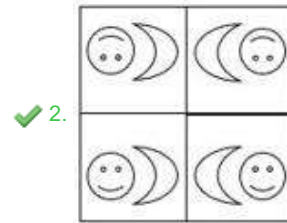
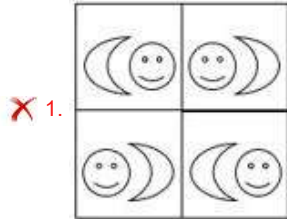
- Ans
- 1. AZAE
  - 2. BZAE
  - 3. BAAE
  - 4. AABE

Question ID : 26433079030  
Status : Answered  
Chosen Option : 2

Q.11 A paper is folded and cut as shown below. How will it appear when unfolded?



Ans



KD Job Updates

Question ID : 26433089786

Status : Answered

Chosen Option : 2



**Q.12** Three Statements are given followed by Three conclusions numbered I, II and III. Assuming the statements to be true, even if they seem to be at variance with commonly known facts, decide which of the conclusions logically follow(s) from the statements.

Statements:

All pillows are bed.  
Some beds are cupboards.  
All cupboards are wood.

Conclusions:

I. Some beds are pillows.  
II. Some cupboards are beds.  
III. All wood are cupboards.

- Ans
- 1. Both conclusions II and III follow.
  - 2. Both conclusions I and II follow.
  - 3. All conclusions follow.
  - 4. Both conclusions I and III follow.

Question ID : 26433074637

Status : Not Attempted and Marked For Review

Chosen Option : --

**Q.13** Which two signs should be interchanged to make the below equation mathematically correct?

$$24 \times 16 + 8 - 36 \div 18 = 30$$

- Ans
- 1. - and +
  - 2. + and ÷
  - 3. × and -
  - 4. ÷ and ×

Question ID : 264330117549

Status : Answered

Chosen Option : 2

**Q.14** Which of the following numbers will replace the question mark (?) in the given series?  
1, 9, 41, 169, ?

- Ans
- 1. 440
  - 2. 681
  - 3. 256
  - 4. 148

Question ID : 26433082009

Status : Answered

Chosen Option : 2

**Q.15** In a certain code language, 'HUMAN' is written as 'HVMBN' and 'BEING' is written as 'BFIOG'. How will 'NURSE' be written in that language?

- Ans
- 1. NVRTE
  - 2. NRVTE
  - 3. NURTE
  - 4. NVRET

Question ID : 26433087253

Status : Answered

Chosen Option : 1

Q.16 In a certain code language, 'CRAVE' is written as 'HVFZJ' and 'ROUND' is written as 'WSZRI'. How will 'BIRDY' be written in the same code language?

- Ans
- 1. KRYSD
  - 2. GMWHD
  - 3. HTEBW
  - 4. HRFBW

Question ID : 26433068143

Status : Answered

Chosen Option : 2

Q.17 Kirti, Suman, Shubh, Kanak, Pari, Charu, Shlok and Shivi are sitting around a square table facing the centre of the table. Some of them are sitting at the corners, while some are sitting at the exact centre of the sides. Kirti sits third to the left of Shubh. Kirti sits at one of the corners. Kanak sits second to the right of Pari. Pari does not sit at any of the corners. Pari is not an immediate neighbour of Kirti. Suman is an immediate neighbour of Charu. Suman does not sit at any of the middle of the sides. Only three people sit between Suman and Shlok. Who is an immediate neighbour of Kanak?

- Ans
- 1. Charu
  - 2. Kirti
  - 3. Shubh
  - 4. Suman

Question ID : 26433082291

Status : Not Answered

Chosen Option : --

Q.18 Six students are sitting around a circular table facing the centre. Prem is an immediate neighbour of Nolan and Suraj. Madhu is sitting third to the right of Prem. Suraj is sitting second to the right of Madhu. Raj is an immediate neighbour of Madhu and Nolan. Steve is sitting third to the right of Nolan. Prem is sitting second to the right of Steve. Who is the immediate neighbour of Raj and Prem?

- Ans
- 1. Suraj
  - 2. Steve
  - 3. Nolan
  - 4. Madhu

Question ID : 26433080396

Status : Answered

Chosen Option : 3

Q.19 Which two signs should be interchanged in the following equation to make it correct?

$$785 - 125 + 12 \div 6 \times 39 = 574$$

- Ans
- 1.  $\times$  and  $+$
  - 2.  $\times$  and  $\div$
  - 3.  $+$  and  $\div$
  - 4.  $-$  and  $+$

Question ID : 26433090135

Status : Not Answered

Chosen Option : --

**Q.20** Which option represents the correct order of the given words as they would appear in the English dictionary?

- 1 vehicle
- 2 verify
- 3 vegan
- 4 venom
- 5 vein

- Ans  1. 3,4,2,1,5
2. 3,1,5,4,2
3. 4,2,1,3,5
4. 3,5,4,1,2

Question ID : 26433069324  
Status : Answered  
Chosen Option : 2

Section : Part-B-General Knowledge and General awareness

**Q.1** What is India's rank in world population as of 2022?

- Ans  1. 1
2. 5
3. 3
4. 2

Question ID : 264330116046  
Status : Answered  
Chosen Option : 4

**Q.2** How many elements are there in the modern periodic table?

- Ans  1. 124
2. 118
3. 102
4. 106

Question ID : 264330115174  
Status : Answered  
Chosen Option : 2

**Q.3** As per Article 279A of the amended Constitution of India, the GST Council which will be a joint forum of the Centre and the States, shall consist of the following members:

- (i) Union Finance Minister
- (ii) The Union Minister of State, in-charge of Revenue or finance
- (iii) The Minister In-charge of finance or taxation or any other Minister nominated by each State Government

- Ans  1. Only (iii)
2. Both (i) and (ii)
3. (i), (ii) and (iii)
4. Only (i)

Question ID : 264330103807  
Status : Not Answered  
Chosen Option : --

Q.4 During Green Revolution, farmers cultivated crops using \_\_\_\_\_ of seeds.

- Ans  1. Monocot seeds  
 2. High Yielding Variety  
 3. Dicot seeds  
 4. Low Yielding Variety

Question ID : 264330115417  
Status : Answered  
Chosen Option : 2

Q.5 Which Union Minister of India inaugurated the Entrepreneurship Cell and Centre of Innovation at C-DOT campus, Delhi in November 2022?

- Ans  1. Giriraj Singh  
 2. Bhupender Yadav  
 3. Ashwini Vaishnaw  
 4. Subrahmanyam Jaishankar

Question ID : 264330114955  
Status : Not Answered  
Chosen Option : --

Q.6 Which of the following states was the host of the 83<sup>rd</sup> National Table Tennis Championship, 2022?

- Ans  1. Meghalaya  
 2. Assam  
 3. Uttar Pradesh  
 4. Manipur

Question ID : 26433090751  
Status : Not Answered  
Chosen Option : --

Q.7 Who became the first ever woman chief of the Securities and Exchange Board of India (SEBI)?

- Ans  1. Samantha Cristoforetti  
 2. Gita Gopinath  
 3. Manjari Jaruhar  
 4. Madhabi Puri Buch

Question ID : 264330115039  
Status : Not Answered  
Chosen Option : --

Q.8 4 kilo calories of energy is released by \_\_\_\_\_ .

- Ans  1. 4 grams of proteins  
 2. one gram of protein  
 3. one gram of sugar  
 4. 4 grams of fat

Question ID : 264330115220  
Status : Not Answered  
Chosen Option : --

Q.9 Which article of Indian Constitution provides for right to freedom of speech?

- Ans  1. 19  
 2. 21  
 3. 21A  
 4. 20

Question ID : 264330115637  
Status : Answered  
Chosen Option : 4

Q.10 Which of the following is an extension of the Indian Ocean?

- Ans  1. Aral Sea  
 2. Arabian Sea  
 3. Yellow Sea  
 4. Caribbean Sea

Question ID : 264330116007  
Status : Answered  
Chosen Option : 2

Q.11 A famous Tamil epic, the Silappadikaram was composed by a poet named Ilango, around \_\_\_\_\_ years ago.

- Ans  1. 3000  
 2. 2200  
 3. 1800  
 4. 2600

Question ID : 26433089127  
Status : Not Answered  
Chosen Option : --

Q.12 Makar Sankranti is celebrated by the Sindhi community by which of the following names?

- Ans  1. Tirmoori  
 2. Teejri  
 3. Lal Loi  
 4. Thadri

Question ID : 26433097114  
Status : Not Answered  
Chosen Option : --

Q.13 How many players on each side are allowed on the field at a time in the game of Kabaddi?

- Ans  1. 7  
 2. 8  
 3. 9  
 4. 10

Question ID : 264330115935  
Status : Not Answered  
Chosen Option : --

Q.14 In which state was the first jute mill of India set up?

- Ans  1. Odisha  
 2. West Bengal  
 3. Assam  
 4. Bihar

Question ID : 264330115583  
Status : Answered  
Chosen Option : 2

Q.15 Who among the following won awards and recognitions for the development of Kathak dance form?

- Ans  1. Amala Akkineni  
 2. Uday Shankar  
 3. Shovana Narayan  
 4. Kelucharan Mohapatra

Question ID : 264330115837  
Status : Not Answered  
Chosen Option : --

Q.16 The total value of \_\_\_\_\_ goods and services produced in a year, indicates national income.

- Ans
- 1. intermediary
  - 2. unfinished
  - 3. final
  - 4. commercial

Question ID : 264330115336  
Status : Not Answered  
Chosen Option : --

Q.17 After Independence, Indian Parliament has accepted the \_\_\_\_\_ pattern of society as the objective of social and economic policy.

- Ans
- 1. capitalist
  - 2. liberal
  - 3. socialist
  - 4. communist

Question ID : 264330116132  
Status : Answered  
Chosen Option : 2

Q.18 Veer Lakhna Nayak, a legendary tribal leader from \_\_\_\_\_ participated in Quit India Movement and was hanged by the Britishers in 1943.

- Ans
- 1. United Provinces
  - 2. Orissa
  - 3. Bihar
  - 4. Bengal

Question ID : 26433089896  
Status : Not Answered  
Chosen Option : --

Q.19 Chu Faat is the folk dance of which of the following North-Eastern states of India?

- Ans
- 1. Nagaland
  - 2. Arunachal Pradesh
  - 3. Sikkim
  - 4. Assam

Question ID : 26433086715  
Status : Not Answered  
Chosen Option : --

Q.20 \_\_\_\_\_ is to assess the service level compliance of the city with respect to quality, quantity, and coverage of water supply, sewerage and septage management, extent of reuse & recycle of used water and conservation of water bodies.

- Ans
- 1. "Pey Jal Survekshan"
  - 2. "Ayushman Bharat"
  - 3. "Namami Gange"
  - 4. "Indradhanush scheme"

Question ID : 264330116183  
Status : Answered  
Chosen Option : 1

Section : Part-C-Elementary Mathematics

Q.1 The HCF and LCM of two natural numbers are 7 and 84, respectively. If one of the numbers is 7, then the difference between the two numbers is:

- Ans
- 1. 7
  - 2. 84
  - 3. 77
  - 4. 91

Question ID : 26433087337  
Status : Answered  
Chosen Option : 3

Q.2 A manufacturer sells his product at 10% profit to the distributor and the distributor sells it to the customer at 5% profit. If the cost price to the customer is Rs.11,500, determine the profit (in Rs.) (neglect the fraction) earned by the manufacturer.

- Ans
- 1. 700
  - 2. 1205
  - 3. 845
  - 4. 995

Question ID : 26433071311  
Status : Not Answered  
Chosen Option : --

Q.3 A person driving to a store travels 100 metres in 200 seconds. Then he went to another store driving another 200 metres in 400 seconds. What is his average speed (in m/s)?

- Ans
- 1. 0.5
  - 2. 0.2
  - 3. 0.4
  - 4. 0.3

Question ID : 26433082961  
Status : Answered  
Chosen Option : 1



Q.4

What is the correct ascending order of the fractions  $\frac{5}{8}, \frac{4}{9}, \frac{1}{4}, \frac{11}{18}$ ?

Ans

1.  $\frac{4}{9} < \frac{1}{4} < \frac{11}{18} < \frac{5}{8}$

2.  $\frac{1}{4} < \frac{4}{9} < \frac{5}{8} < \frac{11}{18}$

3.  $\frac{1}{4} < \frac{11}{18} < \frac{4}{9} < \frac{5}{8}$

4.  $\frac{1}{4} < \frac{4}{9} < \frac{11}{18} < \frac{5}{8}$

Question ID : 26433080321

Status : Answered

Chosen Option : 4

Q.5 Mohit and Shivam together can complete a piece of work in 4 days, Shivam and Mukesh together can complete it in 5 days and Mohit and Mukesh together can complete it in 6 days. In how many days can Mohit, Shivam and Mukesh together finish the work?

Ans

1.  $3\frac{9}{37}$

2.  $2\frac{9}{37}$

3.  $3\frac{19}{37}$

4.  $2\frac{19}{37}$

Question ID : 26433075567

Status : Answered

Chosen Option : 1

Q.6 A, B, and C can complete a work in 9 days and B can do the same work in 18 days. If B takes 33.33% less time than C, find the time taken by C to complete the work.

Ans

1. 24 days

2. 25 days

3. 27 days

4. 22 days

Question ID : 264330116867

Status : Not Attempted and  
Marked For Review

Chosen Option : --

Q.7 A manufacturer offers a 25% discount on the marked price of a product. The retailer offers another 28% discount on the reduced price. What is the single discount equivalent to the two discounts offered?

- Ans
- 1. 34%
  - 2. 46%
  - 3. 38%
  - 4. 41%

Question ID : 26433063782  
Status : Answered  
Chosen Option : 2

Q.8 How much interest would Sonia have to pay on a loan of Rs.25,000 at the rate of 12% p.a. compounded quarterly for the period of 1 year (rounded off to two decimal places)?

- Ans
- 1. Rs.3,127.52
  - 2. Rs.3,000.00
  - 3. Rs.2,137.72
  - 4. Rs.3,137.72

Question ID : 26433080392  
Status : Not Answered  
Chosen Option : --

Q.9 How many metallic spheres, each of diameter 3 cm, should be melted to mould into a solid cylinder of diameter 4 cm and height 54 cm?

- Ans
- 1. 52
  - 2. 42
  - 3. 36
  - 4. 48

Question ID : 26433075208  
Status : Answered  
Chosen Option : 4

Q.10 If  $x[-3\{-6(-a)\}] + 6[-3\{-3(-a)\}] = 6a$ , then find x.

- Ans
- 1.  $-\frac{10}{3}$
  - 2.  $\frac{10}{3}$
  - 3. 9
  - 4. -9

Question ID : 26433076260  
Status : Answered  
Chosen Option : 1

Q.11 If Ramu's salary is 10% less than Bhema's salary, by what percentage is Bhema's salary more than Ramu's salary?

- Ans
- 1. 90%
  - 2. 10.00%
  - 3. 11.11%
  - 4. 80%

Question ID : 26433082644  
Status : Answered  
Chosen Option : 3

Q.12 After giving a discount of 28 percent the selling price of an article is Rs. 13392. The marked price of the article is:

- Ans
- 1. Rs. 18600
  - 2. Rs. 15400
  - 3. Rs. 14800
  - 4. Rs. 16200

Question ID : 264330116752  
Status : Answered  
Chosen Option : 1

Q.13 Incomes of Teena and Sheena are in the ratio of 2 : 3 and their expenditures are in ratio of 3 : 5. If each saves ₹1,000, then Teena's income is:

- Ans
- 1. ₹4,000
  - 2. ₹5,000
  - 3. ₹6,000
  - 4. ₹8,000

Question ID : 26433082087  
Status : Answered  
Chosen Option : 1

Q.14 If  $85\%$  of  $(x - y) = 35\%$  of  $(x + y)$ , Then  $y$  is what percentage of  $x$  ?

- Ans
- 1.  $20\frac{1}{5}\%$
  - 2.  $46\frac{2}{3}\%$
  - 3.  $41\frac{2}{3}\%$
  - 4.  $38\frac{1}{5}\%$

Question ID : 26433080218  
Status : Answered  
Chosen Option : 3

Q.15 Radha takes a loan of Rs.4,00,000 at 14% per annum compound interest, compounded half-yearly. What is the interest that she repays after 2 years?

- Ans
- 1. Rs.1,24,375.40
  - 2. Rs.1,24,318.40
  - 3. Rs.1,24,398.40
  - 4. Rs.1,24,324.40

Question ID : 26433075322  
Status : Not Answered  
Chosen Option : --

Q.16 Two trains of equal lengths take 13 seconds and 26 seconds, respectively, to cross a pole. If these trains are moving in the same direction, then how long will they take to cross each other?

- Ans
- 1. 40 seconds
  - 2. 50 seconds
  - 3. 39 seconds
  - 4. 52 seconds

Question ID : 26433074940  
Status : Answered  
Chosen Option : 4

Q.17 There is a wooden sphere of radius  $15\sqrt{3}$  cm. The total surface area of the largest possible cube cut out from the sphere will be:

- Ans
- 1. 540 cm<sup>2</sup>
  - 2. 900 cm<sup>2</sup>
  - 3. 600 cm<sup>2</sup>
  - 4. 5,400 cm<sup>2</sup>

Question ID : 26433075008  
Status : Not Answered  
Chosen Option : --

Q.18 Manoj buys 15 pencils for Rs.12 and sells them at the rate of Rs.1.50/pencil. What is his profit percentage?

- Ans
- 1. 64.67%
  - 2. 46.67%
  - 3. 87.50%
  - 4. 85.70%

Question ID : 26433080302  
Status : Answered  
Chosen Option : 3

Q.19 In a circular race of 1200 m, A and B start from the same point, at the same time with speeds of 27 km/h and 45 km/h, respectively. After how much time will they meet again for the first time on the track when they running in the same direction?

- Ans
- 1. 220 sec
  - 2. 180 sec
  - 3. 200 sec
  - 4. 240 sec

Question ID : 26433079777  
Status : Not Answered  
Chosen Option : --

Q.20 In a chemistry laboratory, there are two varieties of some acid. Variety A costs Rs.80 per litre, while variety B costs Rs.100 per litre. In what proportion must a scientist mix both the varieties A and B, so that the mixture becomes worth Rs.92 per litre?

- Ans
- 1. 5 : 6
  - 2. 4 : 7
  - 3. 5 : 4
  - 4. 2 : 3

Question ID : 26433075056  
Status : Answered  
Chosen Option : 4

Section : Part-D-English

Q.1 Select the most appropriate option to fill in the blank.

She liked \_\_\_\_\_ flat.

- Ans
- 1. they are
  - 2. their
  - 3. there
  - 4. they're

Question ID : 26433084712  
Status : Not Answered  
Chosen Option : --

Q.2 Select the correct option to substitute the underlined segment in the given sentence. If no substitution is required, select 'No substitution'.

It is more hot now.

- Ans
- 1. more hot then earlier
  - 2. No substitution
  - 3. hotter now
  - 4. hotness now

Question ID : 26433090818  
Status : Not Answered  
Chosen Option : --

**Q.3** Select the most appropriate option to substitute the underlined segment in the given sentence.

Your work diary will of benefit if you use it and keep all the information updated.

- Ans
- 1. diary will benefit of
  - 2. diary will benefitted
  - 3. diary will be of benefit
  - 4. diary of benefit

Question ID : 26433093021  
Status : Not Answered  
Chosen Option : --

**Q.4** Select the most appropriate synonym of the given word.  
Forbore

- Ans
- 1. Refrain
  - 2. Submit
  - 3. Yield
  - 4. Surrender

Question ID : 26433086485  
Status : Not Answered  
Chosen Option : --

**Q.5** Select the option that can be used as a one-word substitute for the given group of words.

The situation in which a disease is spread by touching someone or something

- Ans
- 1. Fatal
  - 2. Infected
  - 3. Contagion
  - 4. Malleable

Question ID : 26433089379  
Status : Not Answered  
Chosen Option : --

**Q.6** Select the most appropriate meaning of the given idiom.

On the ball

- Ans
- 1. Sceptic of changes or developments and thoughtful to react to them
  - 2. Aware of any changes or developments and quick to react to them
  - 3. Aware of any changes or developments but avoid to react to them
  - 4. Unaware of any changes or developments and lazy to react to them

Question ID : 26433073648  
Status : Not Answered  
Chosen Option : --

Q.7 Select the most appropriate option to fill in the blank.

We saw a \_\_\_\_\_ in the city last year.

- Ans
- 1. knew
  - 2. no
  - 3. gnu
  - 4. new

Question ID : 26433090386  
Status : Not Answered  
Chosen Option : --

Q.8 Select the most appropriate ANTONYM of the given word.

Drenched

- Ans
- 1. Airy
  - 2. Fresh
  - 3. Damp
  - 4. Lively

Question ID : 26433072209  
Status : Not Answered  
Chosen Option : --

Q.9 Select the most appropriate ANTONYM of the given word.

Bleak

- Ans
- 1. Fatigued
  - 2. Cordial
  - 3. Clustered
  - 4. Desolate

Question ID : 26433089101  
Status : Not Answered  
Chosen Option : --

Q.10 Select the most appropriate synonym of the capitalised word in the given sentence.

They tried to get official SANCTIONS for the scheme.

- Ans
- 1. Committees
  - 2. Unholiness
  - 3. Permissions
  - 4. Substances

Question ID : 26433088205  
Status : Not Answered  
Chosen Option : --

**Q.11 Identify the correctly spelt sentence.**

- Ans  1. There were two separte sections of students in my school.  
 2. There were two separate sections of students in my school.  
 3. There were two separte sections of students in my school.  
 4. There were two separte sections of students in my school.

Question ID : 26433072837  
Status : Not Answered  
Chosen Option : --

**Q.12 Select the INCORRECTLY spelt word.**

- Ans  1. Irresponsible  
 2. Capacious  
 3. Ravishing  
 4. Inadvartent

Question ID : 26433073659  
Status : Not Answered  
Chosen Option : --

**Q.13 The following sentence has been split into four segments. Identify the segment that contains a grammatical error.**

Smith will / be learning / French when / they are arriving.

- Ans  1. be learning  
 2. French when  
 3. Smith will  
 4. they are arriving

Question ID : 26433092274  
Status : Not Answered  
Chosen Option : --

**Q.14 In the given sentence, a word is given in brackets. Select the most appropriate synonym of the word to fill in the blank.**

The teacher has \_\_\_\_\_ (admitted) the student's sincere apologies.

- Ans  1. acknowledged  
 2. executed  
 3. neglected  
 4. denied

Question ID : 26433058533  
Status : Not Answered  
Chosen Option : --



**Q.15** Select the most appropriate meaning of the underlined idiom in the given sentence.

She had to break the bank to buy that purse.

- Ans  1. To be very expensive  
 2. To rob a bank  
 3. To buy something exclusive  
 4. To go beyond one's means

Question ID : 26433073760

Status : Not Answered

Chosen Option : --

**Comprehension:**

In the following passage, some words have been deleted. Read the passage carefully and select the most appropriate option to fill in each blank.

Darwin planned to (1)\_\_\_\_\_ a book describing his (2)\_\_\_\_\_. He spent nearly twenty years (3)\_\_\_\_\_ the matter for his book, which was to deal with every known fact concerning the problem of the species. Unluckily for Darwin, a naturalist named Wallace had been (4)\_\_\_\_\_ over the same problems and had reached the same solution. He sent Darwin an essay which almost word for word repeated Darwin's own ideas. Yet Wallace, who was an (5)\_\_\_\_\_, had been working far away in the Malay Archipelago, whilst Darwin had not left England for several years.

SubQuestion No : 16

**Q.16** Select the most appropriate option to fill in the blank 1.

- Ans  1. scribble  
 2. script  
 3. write  
 4. paint

Question ID : 26433090556

Status : Not Answered

Chosen Option : --

**Comprehension:**

In the following passage, some words have been deleted. Read the passage carefully and select the most appropriate option to fill in each blank.

Darwin planned to (1)\_\_\_\_\_ a book describing his (2)\_\_\_\_\_. He spent nearly twenty years (3)\_\_\_\_\_ the matter for his book, which was to deal with every known fact concerning the problem of the species. Unluckily for Darwin, a naturalist named Wallace had been (4)\_\_\_\_\_ over the same problems and had reached the same solution. He sent Darwin an essay which almost word for word repeated Darwin's own ideas. Yet Wallace, who was an (5)\_\_\_\_\_, had been working far away in the Malay Archipelago, whilst Darwin had not left England for several years.

SubQuestion No : 17

**Q.17** Select the most appropriate option to fill in the blank 2.

- Ans  1. discoveries  
 2. facts  
 3. articles  
 4. failures

Question ID : 26433090557

Status : Not Answered

Chosen Option : --

**Comprehension:**

In the following passage, some words have been deleted. Read the passage carefully and select the most appropriate option to fill in each blank.

Darwin planned to (1)\_\_\_\_\_ a book describing his (2)\_\_\_\_\_. He spent nearly twenty years (3)\_\_\_\_\_ the matter for his book, which was to deal with every known fact concerning the problem of the species. Unluckily for Darwin, a naturalist named Wallace had been (4)\_\_\_\_\_ over the same problems and had reached the same solution. He sent Darwin an essay which almost word for word repeated Darwin's own ideas. Yet Wallace, who was an (5)\_\_\_\_\_, had been working far away in the Malay Archipelago, whilst Darwin had not left England for several years.

**SubQuestion No : 18**

**Q.18 Select the most appropriate option to fill in the blank 3.**

- Ans
- 1. making
  - 2. observing
  - 3. collecting
  - 4. dispersing

Question ID : 26433090558

Status : Not Answered

Chosen Option : --

**Comprehension:**

In the following passage, some words have been deleted. Read the passage carefully and select the most appropriate option to fill in each blank.

Darwin planned to (1)\_\_\_\_\_ a book describing his (2)\_\_\_\_\_. He spent nearly twenty years (3)\_\_\_\_\_ the matter for his book, which was to deal with every known fact concerning the problem of the species. Unluckily for Darwin, a naturalist named Wallace had been (4)\_\_\_\_\_ over the same problems and had reached the same solution. He sent Darwin an essay which almost word for word repeated Darwin's own ideas. Yet Wallace, who was an (5)\_\_\_\_\_, had been working far away in the Malay Archipelago, whilst Darwin had not left England for several years.

**SubQuestion No : 19**

**Q.19 Select the most appropriate option to fill in the blank 4.**

- Ans
- 1. dreaming
  - 2. thinking
  - 3. saving
  - 4. searching

Question ID : 26433090559

Status : Not Answered

Chosen Option : --

**Comprehension:**

In the following passage, some words have been deleted. Read the passage carefully and select the most appropriate option to fill in each blank.

Darwin planned to (1)\_\_\_\_\_ a book describing his (2)\_\_\_\_\_. He spent nearly twenty years (3)\_\_\_\_\_ the matter for his book, which was to deal with every known fact concerning the problem of the species. Unluckily for Darwin, a naturalist named Wallace had been (4)\_\_\_\_\_ over the same problems and had reached the same solution. He sent Darwin an essay which almost word for word repeated Darwin's own ideas. Yet Wallace, who was an (5)\_\_\_\_\_, had been working far away in the Malay Archipelago, whilst Darwin had not left England for several years.

**SubQuestion No : 20**

**Q.20** Select the most appropriate option to fill in the blank 5.

- Ans
- 1. creator
  - 2. artist
  - 3. wanderer
  - 4. explorer

Question ID : 26433090560

Status : Not Answered

Chosen Option : --

**Section : Part-D-Hindi**

**Q.1** निम्न वाक्य में रेखांकित शब्द के स्थान पर सर्वोचित शब्द का चयन कीजिए।  
गोलियों की बाढ़ के सामने कोई न टिक सका।

- Ans
- 1. गति
  - 2. दहाड़
  - 3. बौछार
  - 4. बारिश

Question ID : 26433065695

Status : Answered

Chosen Option : 3

**Q.2** सुंदर का बेटा मोहन तो गुदड़ी का \_\_\_\_\_ है।  
रिक्त स्थान की पूर्ति उचित शब्द द्वारा कीजिए।

- Ans
- 1. लाल
  - 2. माल
  - 3. धागा
  - 4. कपड़ा

Question ID : 26433062611

Status : Answered

Chosen Option : 1

Q.3 निम्नलिखित किस विकल्प में भाववाचक, समूहवाचक और जातिवाचक संज्ञा का शब्दक्रम सही है?

- Ans  1. दासत्व, घौद, जुलाहा  
 2. कावेरी, दीवाली, वर्षा  
 3. मकान, मैना, काला सागर  
 4. चाँदी, पानी, दौड़

Question ID : 26433063029

Status : Not Attempted and Marked For Review

Chosen Option : --

Q.4 'जो बहुत बोलता है' वाक्यांश के लिए सार्थक शब्द है-

- Ans  1. वक्ता  
 2. वाचक  
 3. पतित  
 4. वाचाल

Question ID : 26433065862

Status : Answered

Chosen Option : 4

Q.5 निम्नलिखित में से कौन-सा वाक्य संज्ञा के प्रयोग की दृष्टि से शुद्ध है?

- Ans  1. चौकीदार पर ही चोर होने का विश्वास है।  
 2. चौकीदार पर ही चोर होने का हक है।  
 3. चौकीदार पर ही चोर होने का संदेह है।  
 4. चौकीदार पर ही चोर होने का डर है।

Question ID : 26433066954

Status : Answered

Chosen Option : 3

Q.6 मुहावरे और उनके अर्थ का निम्नलिखित में से कौन सा युग्म गलत है?

- Ans  1. लोहा मानना-श्रेष्ठता स्वीकार करना  
 2. हथियार डालना-आत्मसमर्पण करना  
 3. हाथ पीले करना-असंभव को संभव करना  
 4. सुरखाब के पर-असाधारण विशेषता

Question ID : 26433062557

Status : Answered

Chosen Option : 3

Q.7 इस पुष्प की सुगंध मनभावन है।  
उपरोक्त वाक्य में रेखांकित शब्द के विलोम शब्द का चयन विकल्पों में से कीजिए।

- Ans  1. दुर्गंध  
 2. स्कंध  
 3. आभा  
 4. सुगंध

Question ID : 26433079748  
Status : Answered  
Chosen Option : 1

Q.8 "पानीपत की लड़ाई में मराठों की पराजय हुई।"  
उक्त वाक्य में प्रयुक्त 'पराजय' के स्थान पर उसके विलोम शब्द का प्रयोग निम्न में से किस वाक्य में किया गया है?

- Ans  1. पानीपत की लड़ाई में मराठों की अपकीर्ति हुई।  
 2. पानीपत की लड़ाई में मराठों की विजय हुई।  
 3. पानीपत की लड़ाई में मराठों की हार हुई।  
 4. पानीपत की लड़ाई में मराठों की शिकस्त हुई।

Question ID : 26433067023  
Status : Answered  
Chosen Option : 2

Q.9 निम्नलिखित में से शुद्ध वाक्य है-

- Ans  1. कौन आदमी आ रहा है?  
 2. कौन आदमी आ रह है?  
 3. कौन अदमी आ रहा है?  
 4. कौन आदमी अ रहा है?

Question ID : 26433066836  
Status : Answered  
Chosen Option : 1

Q.10 निम्नलिखित में से अशुद्ध वाक्य कौन-सा है?

- Ans  1. निशांत बहुत तेज दौड़ता है।  
 2. अश्विन को केवल सौ रुपए मात्र मिले।  
 3. अनन्या की आयु बीस वर्ष है।  
 4. नेता ने सभी लोगों से चर्चा की।

Question ID : 26433066987  
Status : Answered  
Chosen Option : 2

Q.11 विकल्पों में दिया गया कौन सा शब्द निम्नलिखित वाक्य में रेखांकित शब्द का पर्यायवाची नहीं है?  
आग में तप कर ही 'सोना' खरा होता है।

- Ans  1. कंचन  
 2. अयस  
 3. स्वर्ण  
 4. कनक

Question ID : 26433091334  
Status : Answered  
Chosen Option : 2

Q.12 विकल्पों में से निम्नलिखित वाक्यांश के लिए उपयुक्त शब्द चुनें।  
जिसने पवित्र उद्देश्य के लिए जीवन दान किया हो

- Ans  1. दुरात्मा  
 2. धर्मात्मा  
 3. हुतात्मा  
 4. जीवात्मा

Question ID : 26433069990  
Status : Answered  
Chosen Option : 2

Q.13 दिए गए वाक्यांश के लिए सार्थक शब्द बताइए-  
'खाने योग्य पदार्थ'

- Ans  1. भक्षण  
 2. भोजनालय  
 3. उपभोग  
 4. खाद्य

Question ID : 26433062592  
Status : Answered  
Chosen Option : 4

Q.14 'लोग उपदेशक का अनुसरण करने में प्रसन्नता का \_\_\_\_\_ करेंगे।' रिक्त स्थान की पूर्ति उपयुक्त शब्द द्वारा कीजिए।

- Ans  1. अनुभव  
 2. उपवास  
 3. प्रतिफलन  
 4. महसूस

Question ID : 26433080897  
Status : Answered  
Chosen Option : 1

Q.15 निम्न वाक्य में रेखांकित शब्द के स्थान पर उसका उपयुक्त पर्यायवाची शब्द विकल्पों में से कौन-सा होगा?

अधिक मेहनत से उसके चेहरे पर क्लांति आ गई।

- Ans
- 1. खुशी
  - 2. चमक
  - 3. थकान
  - 4. पसीना

Question ID : 26433066900

Status : Answered

Chosen Option : 1

**Comprehension:**

निम्नलिखित गद्यांश में से कुछ शब्द हटा दिए गए हैं। दिए गए विकल्पों की सहायता से रिक्त स्थानों की पूर्ति कीजिए। प्रत्येक संख्या के लिए उपयुक्त विकल्प का चयन कीजिए।

सामने 1. \_\_\_\_\_ में सूर्यास्त हो 2. \_\_\_\_\_ है। गुलाबी सुनहरी धारियाँ नीले आकाश में 3. \_\_\_\_\_ रही हैं। दूर-दूर 4. \_\_\_\_\_ पहाड़ों के मुखड़े गहराने लगे और देखते-देखते बतियाँ 5. \_\_\_\_\_ लगीं।

**SubQuestion No : 16**

Q.16 रिक्त स्थान 1 की पूर्ति के लिए सर्वाधिक उपयुक्त विकल्प का चयन कीजिए।

- Ans
- 1. समुद्र
  - 2. आकाश
  - 3. धरती
  - 4. बादल

Question ID : 26433079591

Status : Answered

Chosen Option : 2

**Comprehension:**

निम्नलिखित गद्यांश में से कुछ शब्द हटा दिए गए हैं। दिए गए विकल्पों की सहायता से रिक्त स्थानों की पूर्ति कीजिए। प्रत्येक संख्या के लिए उपयुक्त विकल्प का चयन कीजिए।

सामने 1. \_\_\_\_\_ में सूर्यास्त हो 2. \_\_\_\_\_ है। गुलाबी सुनहरी धारियाँ नीले आकाश में 3. \_\_\_\_\_ रही हैं। दूर-दूर 4. \_\_\_\_\_ पहाड़ों के मुखड़े गहराने लगे और देखते-देखते बतियाँ 5. \_\_\_\_\_ लगीं।

**SubQuestion No : 17**

Q.17 रिक्त स्थान 2 की पूर्ति के लिए सर्वाधिक उपयुक्त विकल्प का चयन कीजिए।

- Ans
- 1. रहता
  - 2. रहा
  - 3. रहे
  - 4. जाता

Question ID : 26433079592

Status : Answered

Chosen Option : 2

**Comprehension:**

निम्नलिखित गद्यांश में से कुछ शब्द हटा दिए गए हैं। दिए गए विकल्पों की सहायता से रिक्त स्थानों की पूर्ति कीजिए। प्रत्येक संख्या के लिए उपयुक्त विकल्प का चयन कीजिए।  
सामने 1. \_\_\_\_\_ में सूर्यास्त हो 2. \_\_\_\_\_ है। गुलाबी सुनहरी धारियाँ नीले आकाश में 3. \_\_\_\_\_ रही हैं। दूर-दूर 4. \_\_\_\_\_ पहाड़ों के मुखड़े गहराने लगे और देखते-देखते बतियाँ 5. \_\_\_\_\_ लगीं।

**SubQuestion No : 18**

Q.18 रिक्त स्थान 3 की पूर्ति के लिए सर्वाधिक उपयुक्त विकल्प का चयन कीजिए।

- Ans
- 1. लग
  - 2. फैल
  - 3. सो
  - 4. फैलाव

Question ID : 26433079593

Status : Answered

Chosen Option : 2

**Comprehension:**

निम्नलिखित गद्यांश में से कुछ शब्द हटा दिए गए हैं। दिए गए विकल्पों की सहायता से रिक्त स्थानों की पूर्ति कीजिए। प्रत्येक संख्या के लिए उपयुक्त विकल्प का चयन कीजिए।  
सामने 1. \_\_\_\_\_ में सूर्यास्त हो 2. \_\_\_\_\_ है। गुलाबी सुनहरी धारियाँ नीले आकाश में 3. \_\_\_\_\_ रही हैं। दूर-दूर 4. \_\_\_\_\_ पहाड़ों के मुखड़े गहराने लगे और देखते-देखते बतियाँ 5. \_\_\_\_\_ लगीं।

**SubQuestion No : 19**

Q.19 रिक्त स्थान 4 की पूर्ति के लिए सर्वाधिक उपयुक्त विकल्प का चयन कीजिए।

- Ans
- 1. सोए
  - 2. फैले
  - 3. पर्वत
  - 4. फैलाव

Question ID : 26433079594

Status : Answered

Chosen Option : 3

**Comprehension:**

निम्नलिखित गद्यांश में से कुछ शब्द हटा दिए गए हैं। दिए गए विकल्पों की सहायता से रिक्त स्थानों की पूर्ति कीजिए। प्रत्येक संख्या के लिए उपयुक्त विकल्प का चयन कीजिए।  
सामने 1. \_\_\_\_\_ में सूर्यास्त हो 2. \_\_\_\_\_ है। गुलाबी सुनहरी धारियाँ नीले आकाश में 3. \_\_\_\_\_ रही हैं। दूर-दूर 4. \_\_\_\_\_ पहाड़ों के मुखड़े गहराने लगे और देखते-देखते बतियाँ 5. \_\_\_\_\_ लगीं।

**SubQuestion No : 20**

Q.20 रिक्त स्थान 5 की पूर्ति के लिए सर्वाधिक उपयुक्त विकल्प का चयन कीजिए।

- Ans
- 1. मिनमिनाने
  - 2. टिमटिमाने
  - 3. छुपने
  - 4. हिलने

Question ID : 26433079595

Status : Answered

Chosen Option : 2

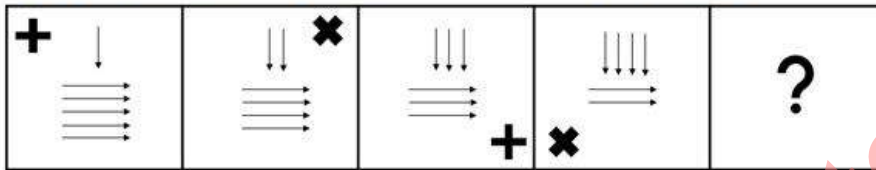


# Constable GD in CAPFs SSF Rifleman GD in Assam Rifles and Sepoy in NCB Examination 2022

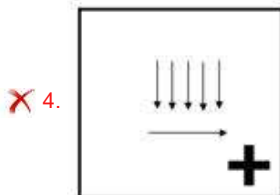
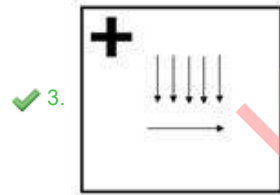
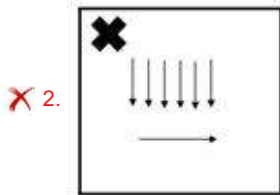
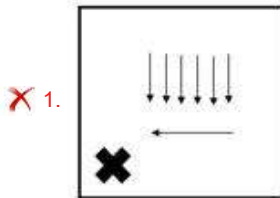
Roll Number	<b>KD Job Updates</b>
Candidate Name	<b>KD Job Updates</b>
Venue Name	iON Digital Zone iDZ Anantapur
Exam Date	23/01/2023
Exam Time	5:15 PM - 6:15 PM
Subject	Constable GD Examination 2022

Section : Part-A-General Intelligence and Reasoning

Q.1 Select the figure that will come next in the following figure series.



Ans



Question ID : 26433076492  
 Status : Answered  
 Chosen Option : 3

Q.2 Which of the following letters will replace the question mark (?) and complete the following letter series?  
F, P, I, S, L, V, ?

- Ans  1. O  
 2. N  
 3. L  
 4. M

Question ID : 26433067282  
Status : Answered  
Chosen Option : 1

Q.3 In a certain code language, 'BUS' is coded as 42 and 'COT' is coded as 38. How will 'DRUM' be coded in that language?

- Ans  1. 57  
 2. 65  
 3. 83  
 4. 56

Question ID : 26433074519  
Status : Answered  
Chosen Option : 4

Q.4 Select the option that is related to the third word in the same way as the second word is related to the first word (The words must be considered as meaningful English words and must not be related to each other based on the number of letters/consonants/vowels in the word).  
January: 31::March: \_\_\_\_\_

- Ans  1. 29  
 2. 28  
 3. 30  
 4. 31

Question ID : 26433078824  
Status : Answered  
Chosen Option : 4

Q.5 Which of the following terms will replace the question mark (?) in the given series?  
EHGD, FGHC, GFIB, ?

- Ans  1. SEHA  
 2. REJA  
 3. HEJA  
 4. BEJA

Question ID : 26433068632  
Status : Answered  
Chosen Option : 3

Q.6 Which option represents the correct order of the given words as they would appear in the English dictionary?

- 1 Book
- 2 Bowl
- 3 Board
- 4 Boundary
- 5 Botanical

- Ans
- 1. 3,1,4,2,5
  - 2. 3,1,5,4,2
  - 3. 3,5,1,4,2
  - 4. 3,4,5,1,2

Question ID : 26433069268

Status : Answered

Chosen Option : 2

Q.7 A @ B means 'A is the husband of B'.

A & B means 'A is the mother of B'.

A # B means 'A is the daughter of B'.

A % B means 'A is the sibling of B'.

If R % Y & D @ G # M, then M's son-in-law is the \_\_\_\_\_ of R.

- Ans
- 1. son
  - 2. sister's son
  - 3. brother
  - 4. grandson

Question ID : 26433069615

Status : Answered

Chosen Option : 2

Q.8 Select the correct mirror image of the given figure when the mirror is placed at MN as shown below.

metaMoRphoSis

M

|

N

- Ans
- 1. mEtAMoRphoSis
  - 2. siZonqRoMεTεm
  - 3. siZonqRoMεTεm
  - 4. mEtAMoRphoSis

Question ID : 26433085546

Status : Answered

Chosen Option : 3

Q.9 In a certain code language, 'candy grass' is coded as 'producer dog', 'feature cable' is coded as 'bug remote', 'grass feature' is coded as 'dog bug', and 'candy cable' is coded as 'producer remote'. What is the code for 'candy'?

- Ans
- 1. remote
  - 2. dog
  - 3. producer
  - 4. bug

Question ID : 26433069042  
Status : Answered  
Chosen Option : 3

Q.10 Which two signs should be interchanged to make the below equation mathematically correct?

$$12 \times 6 + 9 \div 3 - 4 = 25$$

- Ans
- 1.  $\times$  and  $+$
  - 2.  $+$  and  $-$
  - 3.  $\div$  and  $-$
  - 4.  $\times$  and  $\div$

Question ID : 264330114180  
Status : Answered  
Chosen Option : 4

Q.11 Select the option that is related to the fifth term in the same way as the second term is related to the first term and the fourth term is related to the third term.

FUNS : JZJN :: STOP : WYKK :: DISK : ?

- Ans
- 1. GNOG
  - 2. HNOF
  - 3. HMPG
  - 4. GMPF

Question ID : 26433058011  
Status : Answered  
Chosen Option : 2

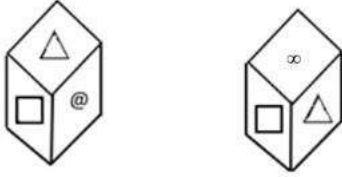
Q.12 Which of the following numbers will replace the question mark (?) in the given series?

2, 6, 12, 20, 30, 42, 56, 72, ?

- Ans
- 1. 78
  - 2. 84
  - 3. 90
  - 4. 80

Question ID : 26433069046  
Status : Answered  
Chosen Option : 3

**Q.13** Two different positions of the same dice are shown having symbols- @, Δ, □, Ω, ∞ and \*. Find the symbol on the face opposite the face showing '@'.



- Ans
- 1. ∞
  - 2. Δ
  - 3. Ω
  - 4. \*

Question ID : 26433085509  
 Status : Answered  
 Chosen Option : 1

**Q.14** Seven people, A, B, C, D, E, F and G are sitting in a straight row, facing north. A sits second from the left. Only two people sit between A and C. Only three people sit between D and F and D is an immediate neighbour of A. B is an immediate neighbour of D and E is not an immediate neighbour of C. Who sits to the extreme right?

- Ans
- 1. D
  - 2. E
  - 3. G
  - 4. F

Question ID : 26433056932  
 Status : Answered  
 Chosen Option : 4

**Q.15** Which two signs should be interchanged to make the below equation mathematically correct?  
 $24 + 54 \div 18 - 48 \times 16 = 40$

- Ans
- 1. × and +
  - 2. ÷ and ×
  - 3. ÷ and +
  - 4. + and -

Question ID : 264330117506  
 Status : Answered  
 Chosen Option : 1

**Q.16** Three statements are given followed by three conclusions numbered I, II and III. Assuming the statements to be true, even if they seem to be at variance with commonly known facts, decide which of the conclusions logically follow(s) from the statements.

**Statements:**

All hands are fingers.

All legs are fingers.

All fingers are toes.

**Conclusions:**

I. All toes are fingers.

II. Some toes are hands.

III. Some toes are legs.

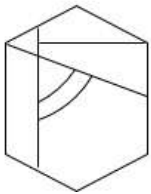
- Ans**
- 1. Only conclusions I and II follow
  - 2. Only conclusions II and III follow
  - 3. All conclusions follow
  - 4. Only conclusions I and III follow

Question ID : 26433082312

Status : Answered

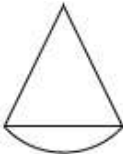
Chosen Option : 2

**Q.17** Select the option figure which is embedded in the given figure. (Rotation is NOT allowed)



**Ans**

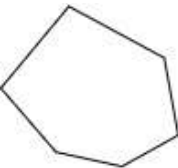
1.



2.



3.



4.



Question ID : 26433069350

Status : Answered

Chosen Option : 2

Q.18 Select the option that is related to the third term in the same way as the second term is related to the first term and the sixth term is related to the fifth term.  
4 : 250 :: 5 : ? :: 6 : 1290

- Ans  1. 619  
 2. 433  
 3. 555  
 4. 535

Question ID : 26433069095  
Status : Answered  
Chosen Option : 1

Q.19 Which of the following numbers will replace the question mark(?) in the given series?  
286, 231, ?, 151, 126, 111

- Ans  1. 166  
 2. 186  
 3. 201  
 4. 111

Question ID : 26433068097  
Status : Answered  
Chosen Option : 2

Q.20 Six girls D, K, M, P, R and S are sitting around a circular table, facing the centre. S is sitting third to the left of R. P is sitting to the immediate right of R and to the immediate left of D. M is sitting to the immediate left of R. K is sitting to the immediate right of S and to the immediate left of M. If D and K exchange their places, Who will be sitting to the immediate right of D?

- Ans  1. R  
 2. M  
 3. P  
 4. S

Question ID : 26433080473  
Status : Answered  
Chosen Option : 2

Section : Part-B-General Knowledge and General awareness

Q.1 When exports are higher than imports, it is known as a situation of \_\_\_\_\_.

- Ans  1. trade surplus  
 2. trade deficit  
 3. fiscal deficit  
 4. revenue surplus

Question ID : 26433054782  
Status : Answered  
Chosen Option : 1

Q.2 Articles \_\_\_\_\_ to \_\_\_\_\_ enunciates the qualifications, functions of the President and his/her tenure, election, method of re-election, and impeachment among others.

- Ans  1. 52; 62  
 2. 50; 55  
 3. 50; 60  
 4. 19; 21

Question ID : 26433089907  
Status : Answered  
Chosen Option : 3

Q.3 A \_\_\_\_\_ balance of trade is one in which the value of domestic goods exported exceeds the value of foreign goods imported.

- Ans  1. unfavorable  
 2. poor  
 3. undesirable  
 4. favorable

Question ID : 264330115293  
Status : Answered  
Chosen Option : 4

Q.4 What is the minimum age required to become a member of the Lok Sabha?

- Ans  1. 18 years  
 2. 22 years  
 3. 25 years  
 4. 23 years

Question ID : 26433074910  
Status : Answered  
Chosen Option : 3

Q.5 Khelo India Youth Games was formerly known as \_\_\_\_\_.

- Ans  1. Jeeto India Youth Games  
 2. Khelo Bharat  
 3. Khelo India School Games  
 4. Khelo India Jeeto India

Question ID : 264330115914  
Status : Not Answered  
Chosen Option : --



Q.6 The public sector was the focus of the \_\_\_\_\_ and planned on bringing rapid industrialization in the country.

- Ans
- 1. third five year plan in India
  - 2. fifth five year plan in India
  - 3. first five year plan in India
  - 4. second five year plan in India

Question ID : 264330115365  
Status : Answered  
Chosen Option : 4

Q.7 Who among the following political leaders became Member of Parliament from Sangrur constituency, Punjab in June 2022?

- Ans
- 1. Arvind Kejriwal
  - 2. Simranjit Singh Mann
  - 3. Bhagwant Mann
  - 4. Azam Khan

Question ID : 264330114899  
Status : Answered  
Chosen Option : 3

Q.8 The 23rd National Youth Festival to commemorate the birthday of Swami Vivekanand was held at\_\_\_\_\_.

- Ans
- 1. Mumbai
  - 2. Delhi
  - 3. Lucknow
  - 4. Dehradun

Question ID : 264330116276  
Status : Not Answered  
Chosen Option : --

Q.9 Who was named as the new Chief Secretary of Delhi in April 2022?

- Ans
- 1. Keshav Prasad Maurya
  - 2. Sanjay Prasad
  - 3. Naresh Kumar
  - 4. Amit Singh

Question ID : 264330114996  
Status : Not Answered  
Chosen Option : --

Q.10 According to which of the following laws, heat produced by an electric current is directly proportional to the resistance of the conductor, the square of the current, and the time for which it flows?

- Ans
- 1. Hooke's Law
  - 2. Joule's Law
  - 3. Coulomb's Law
  - 4. Faraday's Law

Question ID : 264330115147  
Status : Not Answered  
Chosen Option : --

Q.11 How many Indian dances have been recognised by the Sangeet NatakAkademi as classical dance forms as of May 2022?

- Ans
- 1. 10
  - 2. 12
  - 3. 8
  - 4. 5

Question ID : 26433074071  
Status : Answered  
Chosen Option : 3

Q.12 The Indian National Congress was founded in:

- Ans
- 1. 1865
  - 2. 1875
  - 3. 1885
  - 4. 1895

Question ID : 26433090583  
Status : Answered  
Chosen Option : 3

Q.13 At the age of \_\_\_\_\_, Mahavira left home and went to live in a forest in search of enlightenment.

- Ans
- 1. thirty-two
  - 2. thirty
  - 3. twenty-eight
  - 4. twenty-nine

Question ID : 26433085210  
Status : Not Answered  
Chosen Option : --

Q.14 Dree, an agricultural festival of Arunachal Pradesh, is celebrated in the month of \_\_\_\_\_.

- Ans
- 1. June
  - 2. July
  - 3. August
  - 4. May

Question ID : 264330115085  
Status : Not Answered  
Chosen Option : --

Q.15 The nucleus is separated from \_\_\_\_\_ by a nuclear membrane.

- Ans
- 1. vacuole
  - 2. gene
  - 3. cytoplasm
  - 4. cell

Question ID : 264330115241  
Status : Answered  
Chosen Option : 3

Q.16 National Film Award for Best Choreography for the movie Vishwaroopam was awarded to \_\_\_\_\_.

- Ans
- 1. Amala Akkineni
  - 2. M.R Krishnamurthy
  - 3. Pandit Birju Maharaj
  - 4. Kalamandalam Gopi

Question ID : 264330115862  
Status : Not Answered  
Chosen Option : --

Q.17 The Companies (Amendment) Bill, 2020 was introduced in Lok Sabha by which minister?

- Ans
- 1. Anurag Singh Thakur
  - 2. Ramesh Bidhuri
  - 3. Nitin Gadkari
  - 4. Gautam Gambhir

Question ID : 264330116208  
Status : Not Answered  
Chosen Option : --

**Q.18** Burmese is the official language of which neighbouring country of India?

- Ans
- 1. Tibet
  - 2. Nepal
  - 3. Bhutan
  - 4. Myanmar

Question ID : 264330116100  
Status : Answered  
Chosen Option : 4

**Q.19** Autumn season in India comes under which among the following month interval?

- Ans
- 1. June to September
  - 2. December to February
  - 3. October to November
  - 4. March to May

Question ID : 264330115540  
Status : Not Answered  
Chosen Option : --

**Q.20** On what does the pressure and wind system of any area depend?

- Ans
- 1. Distance from the sea and latitude
  - 2. Latitude and altitude of the place
  - 3. Altitude and longitude
  - 4. Longitude and distance from the sea

Question ID : 26433087881  
Status : Not Answered  
Chosen Option : --

Section : Part-C-Elementary Mathematics

**Q.1** The HCF and LCM of two numbers are 6 and 3024, respectively. If one of the numbers is 54, then find the other number.

- Ans
- 1. 334
  - 2. 336
  - 3. 504
  - 4. 506

Question ID : 26433080088  
Status : Answered  
Chosen Option : 2

Q.2 The volume of a right circular cylinder is  $180 \text{ cm}^3$ , the area of its base is  $30 \text{ cm}^2$  and the height is 6 cm then the diameter of the cylinder is (in cm):

Ans

1.  $2\sqrt{\frac{30}{\pi}}$

2.  $\sqrt{30}$

3.  $2\sqrt{30}$

4.  $\sqrt{\frac{30}{\pi}}$

Question ID : 26433079974

Status : Answered

Chosen Option : 1

Q.3 Two trains A and B are 155 km apart on a straight line. One train starts from A at 7:00 A.M. and travels towards B at 20 km/h. Another train starts from B at 8:00 A.M. and travels towards A at a speed of 25 km/h. At what time will they meet?

Ans

1. 10:00 A.M.

2. 9:00 A.M.

3. 12:00 A.M.

4. 11:00 A.M.

Question ID : 26433075506

Status : Answered

Chosen Option : 4

Q.4 Which of the following is divisible by 24?

Ans

1. 2940

2. 2856

3. 1458

4. 1860

Question ID : 26433079901

Status : Answered

Chosen Option : 2

Q.5 Priyank buys an unfurnished flat for Rs. 6000000. He furnished it and eventually sells it for Rs. 12000000. The percent increase in the price of the flat is:

Ans

1. 40 percent

2. 50 percent

3. 100 percent

4. 60 percent

Question ID : 264330116812

Status : Answered

Chosen Option : 3

Q.6 A and B together can complete a work in 8 days. A alone can complete it in 16 days. If B works at 50 percent efficiency, then in how many days A and B together will complete the work?

- Ans
- 1.  $32/3$  days
  - 2.  $55/7$  days
  - 3.  $47/3$  days
  - 4.  $34/3$  days

Question ID : 264330116892  
Status : Answered  
Chosen Option : 1

Q.7 A sum of money is to be distributed among A, B and C in proportion of 5 : 7 : 11. If B gets ₹1,500 more than A, what is B's share?

- Ans
- 1. ₹5,250
  - 2. ₹6,750
  - 3. ₹3,750
  - 4. ₹8,250

Question ID : 26433080115  
Status : Answered  
Chosen Option : 1

Q.8 Find the average of the first 9 prime numbers.

- Ans
- 1.  $\frac{98}{9}$
  - 2.  $10\frac{2}{9}$
  - 3.  $11\frac{1}{9}$
  - 4.  $11\frac{2}{9}$

Question ID : 26433075716  
Status : Answered  
Chosen Option : 3

Q.9 If the third proportion to 8 and 18 is same as the fourth proportion to 2, 81 and  $x^2 + 2x + 2$ , then find the value of x.

- Ans
- 1. -1
  - 2. 1
  - 3. 2
  - 4. -2

Question ID : 26433079944  
Status : Answered  
Chosen Option : 1

Q.10 Two persons P and Q working together can do a piece of work in 18 days. Q alone can do it in 36 days. Q started the work, and after working for 6 days he left the work. P then took up the remaining work. How many days will P take to complete the remaining work?

- Ans  1. 50  
 2. 30  
 3. 20  
 4. 40

Question ID : 26433074463  
Status : Answered  
Chosen Option : 2

Q.11 Ratnesh purchased a bike for Rs.64,000 and sold it for Rs.60,000. What is the percentage loss faced by Ratnesh?

- Ans  1. 6.25%  
 2. 6.00%  
 3. 5.65%  
 4. 5.25%

Question ID : 26433080301  
Status : Answered  
Chosen Option : 1

Q.12 A shopkeeper has found that the selling price of the product is 90% of the cost price. The selling price is Rs.90 per kg, so in order to get a profit, he weighs only 800 grams in place of 1 kg. Determine the profit (in Rs.) earned by the shopkeeper on selling 1 kg of this product?

- Ans  1. 15  
 2. 10  
 3. 25  
 4. 20

Question ID : 26433071314  
Status : Answered  
Chosen Option : 3

Q.13 The average of six consecutive odd numbers is 68. What is the cube of the difference between the highest and the lowest numbers?

- Ans  1. 1000  
 2. 729  
 3. 512  
 4. 1331

Question ID : 26433075755  
Status : Answered  
Chosen Option : 1

Q.14 A seller announced 30% discount on the marked price of a fan. If the selling price of the fan is Rs.2,800, then the marked price of the fan was:

- Ans  1. Rs.4,000  
 2. Rs.3,500  
 3. Rs.3,000  
 4. Rs.2,930

Question ID : 26433083038  
Status : Answered  
Chosen Option : 1

Q.15 Four cows are tied at 4 corners (one at each corner) of a rectangular field of length 30 m and width 20m. The length of the rope is 7 m. What is the area of the field that cows CANNOT graze? (Use  $\pi = 22/7$ )

- Ans  1. 446 m<sup>2</sup>  
 2. 434 m<sup>2</sup>  
 3. 424 m<sup>2</sup>  
 4. 414 m<sup>2</sup>

Question ID : 26433075478  
Status : Answered  
Chosen Option : 1

Q.16 In an election between two candidates, the one who gets 58% of the votes polled is elected by a majority of 4,032 votes. What is the total number of votes polled?

- Ans  1. 25,200  
 2. 24,800  
 3. 24,600  
 4. 25,800

Question ID : 26433080358  
Status : Answered  
Chosen Option : 1

Q.17 After a discount of 15% on the marked price, the profit is 5%. What percent discount on the marked price be there to have 8% profit (rounded off to one decimal place)?

- Ans  1. 12.6%  
 2. 10.2%  
 3. 11.5%  
 4. 9.2%

Question ID : 26433085448  
Status : Answered  
Chosen Option : 1



**Q.18** The difference between compound and simple interests on a certain sum of money at the interest rate of 20% per annum for  $1\frac{1}{2}$  years is Rs.6,200, when the interest is compounded semi-annually. Find the sum of money.

- Ans**  1. Rs. 2,00,000  
 2. Rs. 2,10,300  
 3. Rs. 2,12,000  
 4. Rs. 2,15,520

Question ID : 26433083046  
Status : Answered  
Chosen Option : 1

**Q.19** A man borrows a certain sum of money and pays it back in 2 years in two equal instalments. If Compound Interest is reckoned at 5% per annum in case of annual compounding and he pays back annually Rs.882, what sum did he borrow?

- Ans**  1. Rs.1,600  
 2. Rs.1,640  
 3. Rs.1,682  
 4. Rs.1,650

Question ID : 26433075502  
Status : Answered  
Chosen Option : 2

**Q.20** In 4 h, a boat goes 12 km along the stream. It covers 6 km against the stream in the same time. The speed of the boat in still water (in km/h) is:

- Ans**  1. 2.25  
 2. 1.16  
 3. 3.12  
 4. 1.11

Question ID : 26433080050  
Status : Answered  
Chosen Option : 1

Section : Part-D-English

**Q.1** Select the most appropriate ANTONYM of the given word.

Alienate

- Ans**  1. Alternate  
 2. Alter  
 3. Reconcile  
 4. Renounce

Question ID : 26433074440  
Status : Answered  
Chosen Option : 3

**Q.2** Select the most appropriate option that can substitute the underlined segment in the given sentence.

The collision was witnessed by the pedestrians.

- Ans
- 1. powerful blast
  - 2. funeral procession
  - 3. violent accident
  - 4. protest march

Question ID : 26433099871  
Status : Answered  
Chosen Option : 3

**Q.3** Select the most appropriate option that can substitute the underlined segment in the given sentence.

Dogs are the most adorable and lovable beings to tie.

- Ans
- 1. beings to see
  - 2. animals to play
  - 3. organisms to watch
  - 4. pets to keep

Question ID : 26433088504  
Status : Answered  
Chosen Option : 4

**Q.4** Select the correctly spelt word.

- Ans
- 1. Ricipit
  - 2. Reicipit
  - 3. Reciept
  - 4. Receipt

Question ID : 26433086495  
Status : Answered  
Chosen Option : 4

**Q.5** Select the most appropriate synonym of the given word.

Eligible

- Ans
- 1. Efficient
  - 2. Qualified
  - 3. Sufficient
  - 4. Disinterested

Question ID : 26433073394  
Status : Answered  
Chosen Option : 2

**Q.6 Select the INCORRECTLY spelt word.**

- Ans  1. Thankful  
 2. Dutiful  
 3. Merciful  
 4. Plentiful

Question ID : 26433073502  
Status : Answered  
Chosen Option : 2

**Q.7 Select the most appropriate ANTONYM of the given word.**

**Ponderous**

- Ans  1. Obligated  
 2. Graceful  
 3. Swollen  
 4. Adverse

Question ID : 26433071837  
Status : Answered  
Chosen Option : 2

**Q.8 Select the most appropriate meaning of the given idiom.**

**Bear a grudge**

- Ans  1. To consider people with kindness and care  
 2. To feel angry against somebody for a past incident  
 3. To entertain the guests with utmost happiness  
 4. To feel satisfied with the achievements

Question ID : 26433073480  
Status : Answered  
Chosen Option : 2

**Q.9 Select the most appropriate option to fill in the blank.**

He is usually calm but today he appears rather \_\_\_\_\_.

- Ans  1. quiet  
 2. undisturbed  
 3. disturbed  
 4. relaxed

Question ID : 26433074065  
Status : Answered  
Chosen Option : 3

Q.10 Select the option that expresses the given sentence in past tense form.

Aksa Thomas comes to attend the session so early.

- Ans
- 1. Aksa Thomas came to attend the session so early.
  - 2. Aksa Thomas has come to attend the session so early.
  - 3. Aksa Thomas may come to attend the session so early.
  - 4. Aksa Thomas will come to attend the session so early.

Question ID : 26433089297  
Status : Answered  
Chosen Option : 1

Q.11 Select the most appropriate meaning of the given idiom.

Gate-crasher

- Ans
- 1. Thick grass
  - 2. A person who enters an event without any invitation
  - 3. A blind person
  - 4. A cobra that lives in gardens

Question ID : 26433072575  
Status : Answered  
Chosen Option : 2

Q.12 Select the most appropriate ANTONYM to substitute the underlined word in the given sentence.

This certainly was a feeble attempt to capture the culprit.

- Ans
- 1. enviable
  - 2. refraining
  - 3. powerful
  - 4. treble

Question ID : 26433074011  
Status : Answered  
Chosen Option : 3

Q.13 Select the most appropriate synonym of the given word.

Ample

- Ans
- 1. Entertain
  - 2. Sample
  - 3. Temple
  - 4. Sufficient

Question ID : 26433072188  
Status : Answered  
Chosen Option : 4

**Q.14** Select the most appropriate synonym of the word given in the brackets to fill in the blank.

The increasing population of a country can be a \_\_\_\_\_ (affliction) for the development of a country.

- Ans  1. boom  
 2. bane  
 3. boon  
 4. brittleness

Question ID : 26433071890  
Status : Answered  
Chosen Option : 3

**Q.15** Select the most appropriate option to fill in the blank.

APJ Abdul Kalam was born in a middle class family. He was a short boy \_\_\_\_\_ ordinary looks.

- Ans  1. with either  
 2. with as  
 3. with rather  
 4. neither

Question ID : 26433072728  
Status : Answered  
Chosen Option : 3

**Comprehension:**

In the following passage, some words have been deleted. Read the passage carefully and select the most appropriate option to fill in each blank.

Reaching the stall from which the sound was emanating, he saw that it was deserted. It was festooned (1) \_\_\_\_\_ flowers: blue-bells and foxgloves and harebells and daffodils, but also with violets and lilies. The use and function of these flowers is chiefly (2) \_\_\_\_\_; they bring pleasure; they can be given to a loved one as a token of admiration and affection, and the sound they make is pleasing (3) \_\_\_\_\_ the ear. Also, they catch the light (4) \_\_\_\_\_ delightfully. Dustan could not but observe that the colour of sunlight glittering through the purple crystal was inferior in both (5) \_\_\_\_\_ to that of her eyes.

**SubQuestion No : 16**

**Q.16** Select the most appropriate option to fill in blank number 1.

- Ans  1. on  
 2. with  
 3. by  
 4. upon

Question ID : 26433060871  
Status : Answered  
Chosen Option : 2

**Comprehension:**

In the following passage, some words have been deleted. Read the passage carefully and select the most appropriate option to fill in each blank.

Reaching the stall from which the sound was emanating, he saw that it was deserted. It was festooned (1)\_\_\_\_\_ flowers: blue-bells and foxgloves and harebells and daffodils, but also with violets and lilies. The use and function of these flowers is chiefly (2)\_\_\_\_\_; they bring pleasure; they can be given to a loved one as a token of admiration and affection, and the sound they make is pleasing (3) \_\_\_\_\_ the ear. Also, they catch the light (4) \_\_\_\_\_ delightfully. Dustan could not but observe that the colour of sunlight glittering through the purple crystal was inferior in both (5) \_\_\_\_\_ to that of her eyes.

**SubQuestion No : 17**

**Q.17 Select the most appropriate option to fill in blank number 2.**

- Ans  1. admiration and affection  
 2. decorative and recreational  
 3. glittering  
 4. repellent and frivolous

Question ID : 26433060872

Status : Answered

Chosen Option : 2

**Comprehension:**

In the following passage, some words have been deleted. Read the passage carefully and select the most appropriate option to fill in each blank.

Reaching the stall from which the sound was emanating, he saw that it was deserted. It was festooned (1)\_\_\_\_\_ flowers: blue-bells and foxgloves and harebells and daffodils, but also with violets and lilies. The use and function of these flowers is chiefly (2)\_\_\_\_\_; they bring pleasure; they can be given to a loved one as a token of admiration and affection, and the sound they make is pleasing (3) \_\_\_\_\_ the ear. Also, they catch the light (4) \_\_\_\_\_ delightfully. Dustan could not but observe that the colour of sunlight glittering through the purple crystal was inferior in both (5) \_\_\_\_\_ to that of her eyes.

**SubQuestion No : 18**

**Q.18 Select the most appropriate option to fill in blank number 3.**

- Ans  1. upon  
 2. for  
 3. to  
 4. as far as

Question ID : 26433060873

Status : Answered

Chosen Option : 3

**Comprehension:**

In the following passage, some words have been deleted. Read the passage carefully and select the most appropriate option to fill in each blank.

Reaching the stall from which the sound was emanating, he saw that it was deserted. It was festooned (1)\_\_\_\_\_ flowers: blue-bells and foxgloves and harebells and daffodils, but also with violets and lilies. The use and function of these flowers is chiefly (2)\_\_\_\_\_; they bring pleasure; they can be given to a loved one as a token of admiration and affection, and the sound they make is pleasing (3) \_\_\_\_\_ the ear. Also, they catch the light (4) \_\_\_\_\_ delightfully. Dustan could not but observe that the colour of sunlight glittering through the purple crystal was inferior in both (5) \_\_\_\_\_ to that of her eyes.

**SubQuestion No : 19**

**Q.19 Select the most appropriate option to fill in blank number 4.**

- Ans  1. so  
 2. much  
 3. such  
 4. more

Question ID : 26433060874

Status : Answered

Chosen Option : 2

**Comprehension:**

In the following passage, some words have been deleted. Read the passage carefully and select the most appropriate option to fill in each blank.

Reaching the stall from which the sound was emanating, he saw that it was deserted. It was festooned (1)\_\_\_\_\_ flowers: blue-bells and foxgloves and harebells and daffodils, but also with violets and lilies. The use and function of these flowers is chiefly (2)\_\_\_\_\_; they bring pleasure; they can be given to a loved one as a token of admiration and affection, and the sound they make is pleasing (3) \_\_\_\_\_ the ear. Also, they catch the light (4) \_\_\_\_\_ delightfully. Dustan could not but observe that the colour of sunlight glittering through the purple crystal was inferior in both (5) \_\_\_\_\_ to that of her eyes.

**SubQuestion No : 20**

**Q.20 Select the most appropriate option to fill in blank number 5.**

- Ans  1. aroma and fragrance  
 2. shape and size  
 3. texture and touch  
 4. hue and shade

Question ID : 26433060875

Status : Answered

Chosen Option : 4

Section : Part-D-Hindi

**Q.1 'दूसरों की उन्नति को देखकर जलने वाला' इस वाक्यांश के लिए सार्थक शब्द है -**

- Ans  1. क्रोधी  
 2. गुस्सैल  
 3. ईर्ष्यालु  
 4. कृपालु

Question ID : 26433062331

Status : Not Answered

Chosen Option : --

Q.2 'अपना हस्ताक्षर लगा दो।' इस वाक्य में रेखांकित शब्द के स्थान पर उपयुक्त शब्द के प्रयोग से वाक्य को शुद्ध करें।

- Ans
- 1. सटा
  - 2. जोड़
  - 3. मिला
  - 4. कर

Question ID : 26433062207  
Status : Not Answered  
Chosen Option : --

Q.3 निम्नलिखित में से अशुद्ध वाक्य कौन-सा है?

- Ans
- 1. राजीव ने भरपेट खाना खाया।
  - 2. अक्षत पाठशाला से सीधे घर चला गया।
  - 3. केशव रोटी खा लिया है।
  - 4. मेरे प्राण निकल गए।

Question ID : 26433066984  
Status : Not Answered  
Chosen Option : --

Q.4 'फूंक से पहाड़ उड़ाना' मुहावरे का सही अर्थ है -

- Ans
- 1. असम्भव कार्य करने की कोशिश करना
  - 2. बड़ा काम करना
  - 3. झूठी बातें करना
  - 4. बड़ी-बड़ी बातें करना

Question ID : 26433065928  
Status : Not Answered  
Chosen Option : --

Q.5 'जो पृथ्वी से संबद्ध हैं' वाक्यांश के लिए इनमें से सही शब्द क्या है?

- Ans
- 1. पठार
  - 2. पहाड़
  - 3. पार्थिव
  - 4. पर्वत

Question ID : 26433070148  
Status : Not Answered  
Chosen Option : --



Q.6 'रसोईघर \_\_\_\_\_।' उपर्युक्त वाक्य में रिक्त स्थान के लिए उपयुक्त विकल्प निम्न में से क्या होगा?

- Ans  1. का अर्थ है- रसोई का बनाया हुआ घर  
 2. का अर्थ है- रसोई का घर  
 3. का अर्थ है- रसोइये का घर  
 4. का अर्थ है- रसोई में बना हुआ घर

Question ID : 26433067042  
Status : Not Answered  
Chosen Option : --

Q.7 "लड़कों ने लड़कियों से साथ नाचा।" उपरोक्त वाक्य में कारक सम्बन्धी त्रुटि पहचानकर निम्नलिखित में से शुद्ध वाक्य का चयन कीजिए।

- Ans  1. लड़के लड़कियों के साथ नाचे।  
 2. लड़कों ने लड़कियों के साथ नाचा।  
 3. लड़कों ने लड़कियों से नाचे।  
 4. लड़के लड़कियों ने साथ नाचे।

Question ID : 26433066968  
Status : Not Answered  
Chosen Option : --

Q.8 निम्नलिखित में से 'अंतर' का अर्थ नहीं होता है-

- Ans  1. दूरी  
 2. आकाश  
 3. शेष  
 4. हृदय

Question ID : 26433080948  
Status : Not Answered  
Chosen Option : --

Q.9 "इस विषय पर प्राचार्य ने क्या निर्णय किया?" इस वाक्य में क्रिया सम्बन्धी त्रुटि पहचानकर निम्नलिखित में से शुद्ध वाक्य का चयन कीजिए।

- Ans  1. इस विषय पर प्राचार्य ने क्या निर्णय प्रदान किया?  
 2. इस विषय पर प्राचार्य ने क्या निर्णय दिया?  
 3. इस विषय पर प्राचार्य ने क्या निर्णय कहा?  
 4. इस विषय पर प्राचार्य ने क्या निर्णय लिया?

Question ID : 26433066972  
Status : Not Answered  
Chosen Option : --

Q.10 'भेट' के दो अर्थों में से एक अर्थ 'मुलाकात' है। दूसरे अर्थ से निम्न वाक्य को पूर्ण कीजिए।  
अतिथि को \_\_\_\_\_ देकर सम्मानित किया गया।

- Ans
- 1. पुष्पगुच्छ
  - 2. एक लाख रुपए
  - 3. मानपत्र
  - 4. उपहार

Question ID : 26433079239  
Status : Not Answered  
Chosen Option : --

Q.11 'जो अपना भोजन स्वयं पकाता है' वाक्यांश के लिए उचित शब्द क्या होगा?

- Ans
- 1. स्वयंपाकी
  - 2. स्वयंभू
  - 3. स्वयंपाठी
  - 4. स्वयंसेवक

Question ID : 26433067065  
Status : Not Answered  
Chosen Option : --

Q.12 'मुसीबत में और मुसीबत आना' किस मुहावरे का अर्थ है?

- Ans
- 1. कंगाली में आटा गीला
  - 2. एक अनार सौ बीमार
  - 3. ओछे की प्रीति बालू की भीति
  - 4. ककड़ी चोर और फांसी की सजा

Question ID : 26433062607  
Status : Not Answered  
Chosen Option : --

Q.13 'रामू बेहद गरीब है।'  
उपरोक्त वाक्य में रेखांकित शब्द के उपयुक्त पर्यायवाची शब्द का चयन कीजिए।

- Ans
- 1. निस्सार
  - 2. निर्धन
  - 3. निर्बाध
  - 4. निबद्ध

Question ID : 26433079719  
Status : Not Answered  
Chosen Option : --

Q.14 'संपन्न को सब सुख प्राप्त हो जाते हैं और \_\_\_\_\_ सदा तरसता ही रह जाता है।' 'संपन्न' के विलोम शब्द से उक्त वाक्य पूर्ण करें।

- Ans
- 1. वीर
  - 2. अपंग
  - 3. विपन्न
  - 4. शाही

Question ID : 26433080874  
Status : Not Answered  
Chosen Option : --

Q.15 वर्तनी की दृष्टि से शुद्ध वाक्य का चयन कीजिए-

- Ans
- 1. विनय चुसत न हो पर है समझदार।
  - 2. यदि वह घर पर मिलेगा तो मैं अवशय जाऊँगा।
  - 3. ज्यों ही मैं वहाँ पहुँचा त्यों ही घंटा बजा।
  - 4. वह मरणासन्न था, इसीलिए मैंने उसे छमा कर दिया।

Question ID : 26433062896  
Status : Not Answered  
Chosen Option : --

**Comprehension:**

निम्नलिखित गद्यांश में कुछ शब्दों को हटा दिया गया है। दिए गए विकल्पों की सहायता से रिक्त स्थानों की पूर्ति कीजिए। प्रत्येक संख्या के लिए सबसे उपयुक्त विकल्प का चयन करें।  
सुख 1. \_\_\_\_\_ से उत्पन्न होता है। सुख जड़ता से भी उत्पन्न होता है। पुराने जमाने के लोग सुखी इसलिए थे, क्योंकि 2. \_\_\_\_\_ में उन्हें विश्वास था। उस जमाने के नमूने आज भी हैं, मगर वे 3. \_\_\_\_\_ में कम मिलते हैं। उनका जमघट गाँवों, कस्बों या छोटे-छोटे नगरों में है। इनके बहुत अधिक असंतुष्ट न होने का कारण यह है कि जो 4. \_\_\_\_\_ उनके बस में नहीं है, उन्हें वे अदृश्य की इच्छा पर छोड़कर निश्चित हो जाते हैं। इसी प्रकार सुखी वे लोग भी होते हैं, जो सच्चे अर्थों में जड़तावादी हैं, क्योंकि उनकी 5. \_\_\_\_\_ पर कठखोदी चिड़िया चोंच नहीं मारा करती, किंतु जो न जड़ता को स्वीकार करता है, न ईश्वर के अस्तित्व को तथा जो पूरे मन से न तो जड़ता का त्याग करता है और न ईश्वर के अस्तित्व को।

**SubQuestion No : 16**

Q.16 रिक्त स्थान 1 की पूर्ति के लिए सबसे उपयुक्त विकल्प का चयन करें।

- Ans
- 1. विश्वास
  - 2. अविश्वास
  - 3. शंका
  - 4. संदेह

Question ID : 264330110891  
Status : Not Answered  
Chosen Option : --

**Comprehension:**

निम्नलिखित गद्यांश में कुछ शब्दों को हटा दिया गया है। दिए गए विकल्पों की सहायता से रिक्त स्थानों की पूर्ति कीजिए। प्रत्येक संख्या के लिए सबसे उपयुक्त विकल्प का चयन करें।

सुख 1. \_\_\_\_\_ से उत्पन्न होता है। सुख जड़ता से भी उत्पन्न होता है। पुराने जमाने के लोग सुखी इसलिए थे, क्योंकि 2. \_\_\_\_\_ में उन्हें विश्वास था। उस जमाने के नमूने आज भी हैं, मगर वे 3. \_\_\_\_\_ में कम मिलते हैं। उनका जमघट गाँवों, कस्बों या छोटे-छोटे नगरों में है। इनके बहुत अधिक असंतुष्ट न होने का कारण यह है कि जो 4. \_\_\_\_\_ उनके बस में नहीं है, उन्हें वे अदृश्य की इच्छा पर छोड़कर निश्चित हो जाते हैं। इसी प्रकार सुखी वे लोग भी होते हैं, जो सच्चे अर्थों में जड़तावादी हैं, क्योंकि उनकी 5. \_\_\_\_\_ पर कठखोदी चिड़िया चोंच नहीं मारा करती, किंतु जो न जड़ता को स्वीकार करता है, न ईश्वर के अस्तित्व को तथा जो पूरे मन से न तो जड़ता का त्याग करता है और न ईश्वर के अस्तित्व को।

**SubQuestion No : 17**

Q.17 रिक्त स्थान 2 की पूर्ति के लिए सबसे उपयुक्त विकल्प का चयन करें।

- Ans  1. ईश्वर की सत्ता  
 2. राज सत्ता  
 3. मानव की सत्ता  
 4. असुर की सत्ता

Question ID : 264330110892

Status : Not Answered

Chosen Option : --

**Comprehension:**

निम्नलिखित गद्यांश में कुछ शब्दों को हटा दिया गया है। दिए गए विकल्पों की सहायता से रिक्त स्थानों की पूर्ति कीजिए। प्रत्येक संख्या के लिए सबसे उपयुक्त विकल्प का चयन करें।

सुख 1. \_\_\_\_\_ से उत्पन्न होता है। सुख जड़ता से भी उत्पन्न होता है। पुराने जमाने के लोग सुखी इसलिए थे, क्योंकि 2. \_\_\_\_\_ में उन्हें विश्वास था। उस जमाने के नमूने आज भी हैं, मगर वे 3. \_\_\_\_\_ में कम मिलते हैं। उनका जमघट गाँवों, कस्बों या छोटे-छोटे नगरों में है। इनके बहुत अधिक असंतुष्ट न होने का कारण यह है कि जो 4. \_\_\_\_\_ उनके बस में नहीं है, उन्हें वे अदृश्य की इच्छा पर छोड़कर निश्चित हो जाते हैं। इसी प्रकार सुखी वे लोग भी होते हैं, जो सच्चे अर्थों में जड़तावादी हैं, क्योंकि उनकी 5. \_\_\_\_\_ पर कठखोदी चिड़िया चोंच नहीं मारा करती, किंतु जो न जड़ता को स्वीकार करता है, न ईश्वर के अस्तित्व को तथा जो पूरे मन से न तो जड़ता का त्याग करता है और न ईश्वर के अस्तित्व को।

**SubQuestion No : 18**

Q.18 रिक्त स्थान 3 की पूर्ति के लिए सबसे उपयुक्त विकल्प का चयन करें।

- Ans  1. महानगरों  
 2. नुक्कड़ों  
 3. गलियों  
 4. गांवों

Question ID : 264330110893

Status : Not Answered

Chosen Option : --

**Comprehension:**

निम्नलिखित गद्यांश में कुछ शब्दों को हटा दिया गया है। दिए गए विकल्पों की सहायता से रिक्त स्थानों की पूर्ति कीजिए। प्रत्येक संख्या के लिए सबसे उपयुक्त विकल्प का चयन करें।

सुख 1. \_\_\_\_\_ से उत्पन्न होता है। सुख जड़ता से भी उत्पन्न होता है। पुराने जमाने के लोग सुखी इसलिए थे, क्योंकि 2. \_\_\_\_\_ में उन्हें विश्वास था। उस जमाने के नमूने आज भी हैं, मगर वे 3. \_\_\_\_\_ में कम मिलते हैं। उनका जमघट गाँवों, कस्बों या छोटे-छोटे नगरों में है। इनके बहुत अधिक असंतुष्ट न होने का कारण यह है कि जो 4. \_\_\_\_\_ उनके बस में नहीं है, उन्हें वे अदृश्य की इच्छा पर छोड़कर निश्चित हो जाते हैं। इसी प्रकार सुखी वे लोग भी होते हैं, जो सच्चे अर्थों में जड़तावादी हैं, क्योंकि उनकी 5. \_\_\_\_\_ पर कठखोदी चिड़िया चोंच नहीं मारा करती, किंतु जो न जड़ता को स्वीकार करता है, न ईश्वर के अस्तित्व को तथा जो पूरे मन से न तो जड़ता का त्याग करता है और न ईश्वर के अस्तित्व को।

**SubQuestion No : 19**

Q.19 रिक्त स्थान 4 की पूर्ति के लिए सबसे उपयुक्त विकल्प का चयन करें।

- Ans
- 1. सूखा
  - 2. चीज़
  - 3. कुसुम
  - 4. रचना

Question ID : 264330110894

Status : Not Answered

Chosen Option : --

**Comprehension:**

निम्नलिखित गद्यांश में कुछ शब्दों को हटा दिया गया है। दिए गए विकल्पों की सहायता से रिक्त स्थानों की पूर्ति कीजिए। प्रत्येक संख्या के लिए सबसे उपयुक्त विकल्प का चयन करें।

सुख 1. \_\_\_\_\_ से उत्पन्न होता है। सुख जड़ता से भी उत्पन्न होता है। पुराने जमाने के लोग सुखी इसलिए थे, क्योंकि 2. \_\_\_\_\_ में उन्हें विश्वास था। उस जमाने के नमूने आज भी हैं, मगर वे 3. \_\_\_\_\_ में कम मिलते हैं। उनका जमघट गाँवों, कस्बों या छोटे-छोटे नगरों में है। इनके बहुत अधिक असंतुष्ट न होने का कारण यह है कि जो 4. \_\_\_\_\_ उनके बस में नहीं है, उन्हें वे अदृश्य की इच्छा पर छोड़कर निश्चित हो जाते हैं। इसी प्रकार सुखी वे लोग भी होते हैं, जो सच्चे अर्थों में जड़तावादी हैं, क्योंकि उनकी 5. \_\_\_\_\_ पर कठखोदी चिड़िया चोंच नहीं मारा करती, किंतु जो न जड़ता को स्वीकार करता है, न ईश्वर के अस्तित्व को तथा जो पूरे मन से न तो जड़ता का त्याग करता है और न ईश्वर के अस्तित्व को।

**SubQuestion No : 20**

Q.20 रिक्त स्थान 5 की पूर्ति के लिए सबसे उपयुक्त विकल्प का चयन करें।

- Ans
- 1. आत्मा
  - 2. आँखें
  - 3. हाथ
  - 4. बालों

Question ID : 264330110895

Status : Not Answered

Chosen Option : --

# Constable GD in CAPFs SSF Rifleman GD in Assam Rifles and Sepoy in NCB Examination 2022

Roll Number	<b>KD Job Updates</b>
Candidate Name	<b>KD Job Updates</b>
Venue Name	iON Digital Zone iDZ Green Park
Exam Date	24/01/2023
Exam Time	9:00 AM - 10:00 AM
Subject	Constable GD Examination 2022

## Section : Part-A-General Intelligence and Reasoning

Q.1 In a certain code language, 'OUTGROW' is written as '56GRPX' and 'THINNER' is written as '37NNFS'. How will 'THOUGHT' be written as in that language?

- Ans
- 1. 43UGHT
  - 2. 33UGIU
  - 3. 33UGHT
  - 4. 43UGIU

Question ID : 26433069645  
Status : Answered  
Chosen Option : 4

Q.2 Which of the following options will replace the question mark (?) in the given series?  
57, 63, 71, ?, 93, 107

- Ans
- 1. 81
  - 2. 83
  - 3. 77
  - 4. 87

Question ID : 26433089436  
Status : Answered  
Chosen Option : 1

Q.3 Select the option that is related to the third word in the same way as the second word is related to the first word. (The words must be considered as meaningful English words and must not be related to each other based on the number of letters/number of consonants/vowels in the word.)  
Dog : Four :: Sparrow : ?

- Ans
- 1. Two
  - 2. Six
  - 3. Five
  - 4. Seven

Question ID : 26433067378  
Status : Answered  
Chosen Option : 1

Q.4 Which two signs should be interchanged to make the below equation mathematically correct?

$$132 \div 6 - 24 \times 5 + 9 = 43$$

- Ans
- 1. + and ×
  - 2. + and ÷
  - 3. - and +
  - 4. + and ×

Question ID : 264330117554  
Status : Answered  
Chosen Option : 4

Q.5 Which of the following letters will replace the question mark (?) and complete the following letter series?

F, D, J, B, N, Z, ?

- Ans
- 1. S
  - 2. P
  - 3. Q
  - 4. R

Question ID : 26433067294  
Status : Answered  
Chosen Option : 4

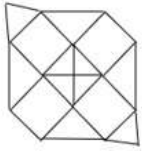
Q.6 Which option represents the correct order of the given words as they would appear in the English dictionary?

1. Elegant
2. Emerald
3. Elaborate
4. Elasticity
5. Elephant

- Ans
- 1. 3,4,5,1,2
  - 2. 3,4,1,5,2
  - 3. 4,3,2,1,5
  - 4. 4,3,1,5,2

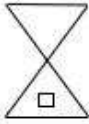
Question ID : 26433069279  
Status : Answered  
Chosen Option : 2

Q.7 Select the option that is embedded in the given figure (rotation is NOT allowed).




Ans


✗ 1.



✓ 2.



✗ 3.



✗ 4.



Question ID : 26433082897

Status : Answered

Chosen Option : 2

Q.8 6 people P, Q, R, S, T, and U are sitting on a wall facing North. P is to the immediate left of Q. R is to the immediate right of Q. Only S is sitting between R and T. U is sitting to the immediate right of T. Who is sitting between Q and S?

Ans ✗ 1. Q

✓ 2. R

✗ 3. T

✗ 4. U

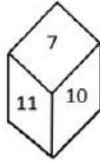
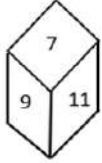
Question ID : 26433074628

Status : Answered

Chosen Option : 2



**Q.9** Two different positions of the same dice are shown having numbers 7 to 12. Find the number on the face opposite the face showing '9'.



- Ans
- 1. 8
  - 2. 10
  - 3. 11
  - 4. 12

Question ID : 26433085520  
Status : Answered  
Chosen Option : 2

**Q.10** Select the option that is related to the fifth number in the same way as the second number is related to the first number and the fourth number is related to the third number.

14 : 4 :: 18 : 6 :: 22 : ?

- Ans
- 1. 7
  - 2. 9
  - 3. 8
  - 4. 10

Question ID : 26433069426  
Status : Not Answered  
Chosen Option : --

**Q.11** Select the option that is related to the third word in the same way as the second word is related to the first word.

(The words must be considered as meaningful English words and must not be related to each other based on the number of letters/number of consonants/vowels in the word.)

Rupee : India :: Dollar : ?

- Ans
- 1. United States Of America
  - 2. England
  - 3. Europe
  - 4. United Arab Emirates

Question ID : 26433082938  
Status : Answered  
Chosen Option : 1

Q.12 In a certain code language ACCOUNT is written as 'EBGNMXX' and MANOR is written as 'QZRNW'. How will PATTERN be written in the same code language?

- Ans  1. TZXSQR  
 2. TZXSQR  
 3. TBXSQR  
 4. TBYTQS

Question ID : 26433076686  
Status : Answered  
Chosen Option : 1

Q.13 Select the letter-cluster from among the given options that can replace the question mark (?) in the following series.  
JRY, GOV, DLS, AIP, ?

- Ans  1. XFM  
 2. YEF  
 3. XEN  
 4. YEN

Question ID : 26433079035  
Status : Answered  
Chosen Option : 1

KD Job Updates

Q.14 Which figure should replace the question mark (?) if the series were to be continued?

	P		A		6		=					
A	↑	C	▽	6	P	=	C	▽	A	↑	6	
6	▽	=	=	C	↑	↑	A	P	P	▽	C	?

Ans

✗ 1.

	▽	
P	=	A
C	↑	6

✓ 2.

	↑	
P	▽	A
C	=	6

✗ 3.

	▽	
6	=	C
A	↑	P

✗ 4.

	↑	
6	▽	C
A	=	P

Question ID : 26433076631

Status : Answered

Chosen Option : 1

Q.15 'C / D' means 'C is the sister of D'.  
 'C < D' means 'C is the husband of D'.  
 'C @ D' means 'C is the father of D'.  
 'C + D' means 'C is the son of D'.  
 If P @ Q + R / S < T, how is T related to Q?

Ans

✗ 1. Father's wife's sister

✗ 2. Mother's mother

✓ 3. Mother's brother's wife

✗ 4. Mother's sister's husband


Question ID : 26433086997

Status : Not Answered

Chosen Option : --

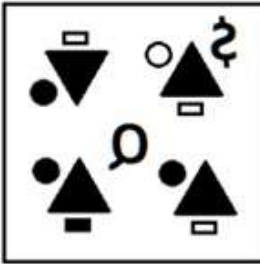
**Q.16** Which of the following figures is the exact mirror image of the given problem figure when the mirror is held at the right side?

Problem figure:

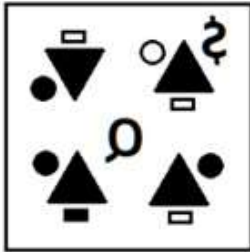


Ans


✗ 1.



✓ 2.



✗ 3.



✗ 4.



Question ID : 26433087088  
 Status : Answered  
 Chosen Option : 2

Q.17 If '+' means '-', '-' means '+', '÷' means 'x', and 'x' means '÷'. Which of the following will be the value of the expression?

$$117 - 13 \div 6 + 24 \times 26$$

- Ans
- 1. 36
  - 2. 56
  - 3. 46
  - 4. 66

Question ID : 264330114191  
Status : Answered  
Chosen Option : 2

Q.18 Three statements are given, followed by three conclusions numbered I, II and III. Assuming the statements to be true, even if they seem to be at variance with commonly known facts, decide which of the conclusions logically follow(s) from the statements.

Statements:

No keys are phones.

All keys are clips.

Some keys are tables.

Conclusions:

I. Some clips are not phones.

II. Some tables are not phones.

III. Some clips are tables.

- Ans
- 1. Only conclusions I and III follow
  - 2. Only conclusions II and III follow
  - 3. All conclusions follow
  - 4. Only conclusion III follows

Question ID : 26433090987  
Status : Answered  
Chosen Option : 4

Q.19 Seven people F, H, K, G, J, D, and L are sitting in a straight row, facing north. Only two people sit to the right of G. Only two people sit to the left of J. H sits between G and J. K sits between J and L. F sits between G and D. Who sits at the extreme right of the row?

- Ans
- 1. D
  - 2. L
  - 3. H
  - 4. F

Question ID : 26433082637  
Status : Answered  
Chosen Option : 1

**Q.20** Which of the following numbers will replace the question mark (?) in the given series?  
23629, 23593, 23568, ?, 23543, 23539

- Ans
- 1. 23548
  - 2. 23551
  - 3. 23563
  - 4. 23552

Question ID : 26433069084  
Status : Answered  
Chosen Option : 4

Section : Part-B-General Knowledge and General awareness

**Q.1** Which of the following type of unemployment is there in rural areas?

- I. Seasonal Unemployment
- II. Disguised Unemployment

- Ans
- 1. Both I and II
  - 2. Only I
  - 3. Neither I nor II
  - 4. Only II

Question ID : 264330116082  
Status : Answered  
Chosen Option : 2

**Q.2** The golden quadrilateral super highways connect Delhi, \_\_\_\_\_, Chennai, and Mumbai.

- Ans
- 1. Kolkata
  - 2. Nagpur
  - 3. Jhansi
  - 4. Dehradun

Question ID : 264330115588  
Status : Answered  
Chosen Option : 1

**Q.3** According to Megasthenes, how many gates were there in Pataliputra?

- Ans
- 1. 261
  - 2. 366
  - 3. 125
  - 4. 64

Question ID : 264330115448  
Status : Not Answered  
Chosen Option : --

**Q.4 Which Article authorises the President to appoint the Governor of a State as the administrator of an adjoining Union territory?**

- Ans  1. Article 238(2)  
 2. Article 239(2)  
 3. Article 237(2)  
 4. Article 231(2)

Question ID : 26433089973  
Status : Not Answered  
Chosen Option : --

**Q.5 Whom has the Union Home Ministry appointed as the new Commissioner of Delhi Police in July 2022?**

- Ans  1. Sanjeev Bakshi  
 2. Mohan Malaviya  
 3. Sanjay Arora  
 4. Sumeet Bansal

Question ID : 264330115044  
Status : Answered  
Chosen Option : 3

**Q.6 In \_\_\_\_\_ method of calculating national income, we calculate the aggregate annual value of goods and services produced (if a year is the unit of time).**

- Ans  1. loan  
 2. purchase  
 3. tax  
 4. product

Question ID : 264330115341  
Status : Answered  
Chosen Option : 4

**Q.7 The deadline for the abolition of the reservation of Scheduled Castes and Scheduled Tribes in the year 2020 was extended for further \_\_\_\_\_ years.**

- Ans  1. 20  
 2. 10  
 3. 15  
 4. 5

Question ID : 264330116230  
Status : Answered  
Chosen Option : 2

**Q.8 Kunchu Kurup is widely recognised for which dance form?**

- Ans**
- 1. Kuchipudi
  - 2. Mohiniyattam
  - 3. Kathakali
  - 4. Sattriya

Question ID : 264330115884  
Status : Answered  
Chosen Option : 4

**Q.9 Which political leader won the by-poll election from Champawat constituency in Uttarakhand, in May 2022?**

- Ans**
- 1. Jagat Prakash Nadda
  - 2. Pushkar Singh Dhama
  - 3. Piyush Goyal
  - 4. Narendra Modi

Question ID : 264330114910  
Status : Answered  
Chosen Option : 2

**Q.10 The base of the ecological pyramid is usually broad and it narrows towards the \_\_\_\_\_.**

- Ans**
- 1. bottom
  - 2. center
  - 3. apex
  - 4. sides

Question ID : 264330115260  
Status : Answered  
Chosen Option : 3

**Q.11 The theme of the 6th International Day of Yoga-2020 was \_\_\_\_\_.**

- Ans**
- 1. Do Yog at home
  - 2. Har Ghar Yog
  - 3. Yoga at Home and Yoga with Family
  - 4. Be with Yoga, Be at Home!

Question ID : 26433086725  
Status : Answered  
Chosen Option : 4



Q.12 Radha Reddy and Raja Reddy are famous proponents of which dance?

- Ans  1. Kuchipudi  
 2. Bharatanatyam  
 3. Mohiniyattam  
 4. Kathakali

Question ID : 26433066534  
Status : Answered  
Chosen Option : 1

Q.13 Which of the following is a benefit of the Green Revolution?

- Ans  1. Self-sufficiency in food grains  
 2. decrease in food grain stock of government  
 3. Increase in the price of food grains  
 4. Increase in the import of food grains

Question ID : 26433054627  
Status : Answered  
Chosen Option : 4

Q.14 Which of the following is one of the principal advantage of using a solar cell?

- Ans  1. It shows oscillatory motion.  
 2. It has metal in the outer area.  
 3. It has moving parts.  
 4. It has no moving parts.

Question ID : 26433087840  
Status : Answered  
Chosen Option : 1

Q.15 Gangotri Glacier lies in which state?

- Ans  1. Arunachal Pradesh  
 2. Uttarakhand  
 3. Himachal Pradesh  
 4. Sikkim

Question ID : 264330116012  
Status : Answered  
Chosen Option : 2

Q.16 Third Five Year plans were aimed at making India \_\_\_\_\_.

- Ans  1. self reliant  
 2. an IT nation  
 3. dependent  
 4. deficient

Question ID : 264330115376  
Status : Answered  
Chosen Option : 2

Q.17 The first Rajiv Gandhi Khel Ratna award was given to which of the following sports person?

- Ans
- 1. Major Dhyanchand
  - 2. Sachin Tendulkar
  - 3. Vishwanathan Anand
  - 4. Saina Nehwal

Question ID : 264330116301  
Status : Answered  
Chosen Option : 3

Q.18 Which article of the Indian Constitution deals with the abolition of titles?

- Ans
- 1. Article 18
  - 2. Article 19
  - 3. Article 16
  - 4. Article 17

Question ID : 264330115642  
Status : Answered  
Chosen Option : 4

Q.19 Who among the following wrote the song Vande Mataram?

- Ans
- 1. Vir Singh Salgaonka
  - 2. Anil Chandra Banerjee
  - 3. Bankim Chandra Chattopadhyay
  - 4. Lal Makhan Singh

Question ID : 26433091465  
Status : Answered  
Chosen Option : 3

Q.20 The Bumchu festival is primarily celebrated in which of the following states of India?

- Ans
- 1. Sikkim
  - 2. Himachal Pradesh
  - 3. Maharashtra
  - 4. Andhra Pradesh

Question ID : 26433094881  
Status : Answered  
Chosen Option : 4

Q.1 The fourth proportional to 16, 26 and 32 is:

- Ans  1. 22  
 2. 51  
 3. 52  
 4. 23

Question ID : 26433075388  
Status : Answered  
Chosen Option : 3

Q.2 Jack can do a piece of work in 30 days. Ryan can do this work in 14 days. Jack started the work alone. After how many days should Ryan join him, so that the work is finished in 15 days?

- Ans  1. 4 days  
 2. 7 days  
 3. 8 days  
 4. 5 days

Question ID : 264330116914  
Status : Answered  
Chosen Option : 2

Q.3 The average weight of 100 employees in a company is 62 kg and that of the remaining 25 employees is 52 kg. Find the average weight of all the employees in the company.

- Ans  1. 55 kg  
 2. 60 kg  
 3. 57 kg  
 4. 58 kg

Question ID : 26433074913  
Status : Answered  
Chosen Option : 2

Q.4 In how many years ₹4,000 will amount to ₹5,324 at 10 percent per annum compound interest, compounded annually?

- Ans  1. 2  
 2. 2.5  
 3. 3  
 4. 4

Question ID : 26433079875  
Status : Answered  
Chosen Option : 3

**Q.5** After allowing a discount of 10% on its marked price, the value of a mobile phone is Rs.20,250. If no discount is allowed, then the shopkeeper gains 20%. The cost price of the mobile phone is:

- Ans
- 1. Rs.19,000
  - 2. Rs.18,000
  - 3. Rs.19,250
  - 4. Rs.18,750

Question ID : 26433074959  
Status : Not Answered  
Chosen Option : --

**Q.6** The price of an article is reduced by 10% but the daily sale of the article is increased by 20%. The net effect on the daily sale receipts is:

- Ans
- 1. Increase in 10%
  - 2. Increase in 12%
  - 3. Increase in 8%
  - 4. Increase in 5%

Question ID : 26433080103  
Status : Answered  
Chosen Option : 3

**Q.7** If a train 90-m-long crosses a platform of 210-m-long in 20 sec, then what is the speed of the train?

- Ans
- 1. 58 km/h
  - 2. 52 km/h
  - 3. 54 km/h
  - 4. 56 km/h

Question ID : 26433075692  
Status : Answered  
Chosen Option : 3

**Q.8** A man saves 25% of his monthly income. Due to a 20% increase in his income, his expenditure also increases by 20%. Now he can save Rs.1,500 per month. Find his original monthly income.

- Ans
- 1. Rs.7,500
  - 2. Rs.6,500
  - 3. Rs.5,500
  - 4. Rs.5,000

Question ID : 26433075465  
Status : Answered  
Chosen Option : 4

Q.9 Ram and Lakshman can complete a work in 15 and 20 days, respectively. If Bharat, Ram and Lakshman all are working together, then they can complete the work in 5 days. How long will Bharat take to finish the work?

- Ans
- 1. 20 days
  - 2. 10 days
  - 3. 12 days
  - 4. 15 days

Question ID : 26433075893  
Status : Answered  
Chosen Option : 3

Q.10 Two trains A and B of lengths 190 m and 195 m are running at speeds of 50 km/h and 76 km/h, respectively, towards each other on parallel tracks. In how much time will they cross each other?

- Ans
- 1. 14 seconds
  - 2. 13 seconds
  - 3. 12 seconds
  - 4. 11 seconds

Question ID : 26433075738  
Status : Answered  
Chosen Option : 4

Q.11 In a triangle, if the longest side has length 15 cm, one of the another side has length 12 cm and its perimeter is 34 cm, then the area of the triangle in  $\text{cm}^2$  is:

- Ans
- 1.  $10\sqrt{17}$
  - 2.  $5\sqrt{17}$
  - 3.  $5\sqrt{15}$
  - 4.  $10\sqrt{15}$

Question ID : 26433079971  
Status : Not Answered  
Chosen Option : --

Q.12 A dealer offers 25% discount on an item. He offers a further discount of 15% on cash payment. A customer paid ₹255 in cash. Find the marked price of the item.

- Ans
- 1. ₹600
  - 2. ₹500
  - 3. ₹300
  - 4. ₹400

Question ID : 26433074459  
Status : Not Answered  
Chosen Option : --

Q.13 The total surface area of a hemisphere is  $4158 \text{ cm}^2$ . The radius of the hemisphere is:

(use  $\pi = \frac{22}{7}$ )

- Ans  1. 21 cm  
 2. 7 cm  
 3. 42 cm  
 4. 14 cm

Question ID : 26433087408  
Status : Answered  
Chosen Option : 1

Q.14 The price of a car is Rs.2,50,000. In the first year, its value depreciates by 10%, and in the second year, it depreciates by 15%. What will be the value of the car after 2 years?

- Ans  1. Rs.1,91,250  
 2. Rs.1,85,670  
 3. Rs.1,75,000  
 4. Rs.1,90,300

Question ID : 26433065289  
Status : Answered  
Chosen Option : 1

Q.15 Rakesh sells two watches for Rs.2,530 each, gaining 15% on one and losing 15% on the other. Find his approximate gain or loss percentage in the whole transaction.

- Ans  1. Loss, 2.25%  
 2. Loss, 3.30%  
 3. Gain, 2.25%  
 4. Gain, 3.30%

Question ID : 26433075233  
Status : Answered  
Chosen Option : 1

Q.16 Arvind bought an item under successive discount scheme having 20% and 25% discounts successively, and paid ₹6,000 as the bill. MRP of the item was:

- Ans  1. ₹10,450  
 2. ₹9,420  
 3. ₹8,020  
 4. ₹10,000

Question ID : 26433080025  
Status : Answered  
Chosen Option : 4

Q.17 Simplify the following.

$$\frac{1}{8} - \left\{ \frac{1}{5} + (1 - 0.6) \right\}$$

Ans

1.  $\frac{-3}{20}$

2.  $\frac{1}{20}$

3.  $\frac{13}{40}$

4.  $\frac{-19}{40}$

Question ID : 26433082606

Status : Answered

Chosen Option : 4

Q.18 Select the correct combination and order of mathematical signs to replace '\*\*' such that the equation is balanced:

$$172 * 86 * 14 * 2 = 30$$

Ans  1. +, -, +

2. +, +, ×

3. +, -, ×

4. +, +, +

Question ID : 26433076408

Status : Answered

Chosen Option : 2

Q.19 A bike rider covers 100 km at a speed of 75 km/h. At what speed does the rider have to drive for the next one hour to get an average speed of 90 km/h?

Ans  1. 110 km/h

2. 90 km/h

3. 80 km/h

4. 100 km/h

Question ID : 26433091901

Status : Not Answered

Chosen Option : --

Q.20 In a college canteen, food items were collected to serve 96 students for 5 days. But due to new admissions, 64 more students joined. Now, for how many days the food items would last?

- Ans
- 1. 5 days
  - 2. 4 days
  - 3. 3 days
  - 4. 2 days

Question ID : 26433073111  
Status : Answered  
Chosen Option : 3

Section : Part-D-English

Q.1 Select the appropriate idiom that can replace the underlined phrase in the following sentence.

Geet talks incessantly about cycling in her town.

- Ans
- 1. put a bee on someone
  - 2. has a bee in her bonnet
  - 3. gives a buzz
  - 4. makes a bee line

Question ID : 26433072283  
Status : Not Answered  
Chosen Option : --

Q.2 Select the most appropriate option to fill in the blanks in the given sentence.

The vice chancellor is supposed to \_\_\_\_\_ the gathering tonight, and Seema was late as she could not find the \_\_\_\_\_ of Geeta.

- Ans
- 1. speak
  - 2. address
  - 3. home
  - 4. convey

Question ID : 26433084769  
Status : Not Answered  
Chosen Option : --

Q.3 Select the most appropriate option that can substitute the underlined segment in the given sentence.

His wife is aiding and abets him in his dishonest deeds.

- Ans
- 1. aiding and bets
  - 2. aiding and betting
  - 3. aids and abets
  - 4. aids and betting

Question ID : 26433071933  
Status : Not Answered  
Chosen Option : --



Q.4 Select the most appropriate ANTONYM of the word given in brackets to fill in the blank.

We are (last) \_\_\_\_\_ in line.

- Ans
- 1. eventual
  - 2. further
  - 3. foremost
  - 4. maimed

Question ID : 26433090382  
Status : Not Answered  
Chosen Option : --

Q.5 Select the most appropriate option that can substitute the underlined segment in the given sentence. If there is no need to substitute it, select 'No substitution'.

I have to save this coupon in case I come back to the store tomorrow.

- Ans
- 1. No substitution
  - 2. in case I came back to the store tomorrow
  - 3. if in case I come back to the store tomorrow
  - 4. in case I will come back to the store tomorrow

Question ID : 264330101023  
Status : Not Answered  
Chosen Option : --

Q.6 Select the most appropriate synonym of the given word.

Indebted

- Ans
- 1. Careless
  - 2. Doubtful
  - 3. Envious
  - 4. Thankful

Question ID : 26433073461  
Status : Not Answered  
Chosen Option : --

Q.7 The sentence given below has one misspelt word. Spot the INCORRECTLY spelt word and select its correct spelling.

You need to give tremendous input for excellence.

- Ans
- 1. Tremendous
  - 2. Tremindous
  - 3. Trimendous
  - 4. Tremandous

Question ID : 26433073563  
Status : Not Answered  
Chosen Option : --

Q.8 Select the most appropriate ANTONYM of the given word.

Cramped

- Ans
- 1. Remote
  - 2. Vicinity
  - 3. Straight
  - 4. Extensive

Question ID : 26433072204  
Status : Not Answered  
Chosen Option : --

Q.9 Select the most appropriate option to substitute the underlined segment in the given sentence.

A thin layer of substance called soil maintains the level of the Earth and is where plant roots are found.

- Ans
- 1. controls the growth
  - 2. covers the surface
  - 3. removes the texture
  - 4. designs the cultivation

Question ID : 26433089828  
Status : Not Answered  
Chosen Option : --

Q.10 Select the most appropriate synonym of the underlined word in the given sentence.

Prashant is obstinate by nature.

- Ans
- 1. adamant
  - 2. pliable
  - 3. generous
  - 4. flexible

Question ID : 26433092107  
Status : Not Answered  
Chosen Option : --

Q.11 Select the most appropriate option to fill in the blank.

Residents of the area are still trying to come to terms with the \_\_\_\_\_ of the disaster.

- Ans
- 1. heinousness
  - 2. duress
  - 3. atrocity
  - 4. enormity

Question ID : 26433073581  
Status : Not Answered  
Chosen Option : --

Q.12 Select the most appropriate ANTONYM of the given word.

Sustain

- Ans
- 1. Embrace
  - 2. Rectify
  - 3. Obstruct
  - 4. Continue

Question ID : 26433090794  
Status : Not Answered  
Chosen Option : --

Q.13 Parts of the following sentence have been given as options. One of them may contain an error. Select the part that contains the error from the given options. If you don't find any error, mark 'No error' as your answer.

Her knowledge of English are very limited.

- Ans
- 1. knowledge of English are
  - 2. very limited
  - 3. Her
  - 4. No Error

Question ID : 26433088857  
Status : Not Answered  
Chosen Option : --

Q.14 The sentence given below has one misspelt word. Spot the INCORRECTLY spelt word and select its correct spelling.

The number of bankrupcies was especially high last year.

- Ans
- 1. Bankrapcies
  - 2. Bankerupcies
  - 3. Bankrupsies
  - 4. Bankruptcies

Question ID : 26433073545  
Status : Not Answered  
Chosen Option : --

Q.15 Select the most appropriate synonym of the underlined word.

He has a nasty habit of picking his nose.

- Ans
- 1. Laudable
  - 2. Indolent
  - 3. Cowardly
  - 4. Despicable

Question ID : 26433088449  
Status : Not Answered  
Chosen Option : --

**Comprehension:**

In the following passage, some words have been deleted. Read the passage carefully and select the most appropriate option to fill in each blank.

I understood why these highly (1) \_\_\_\_\_ professionals remained in the closet. I was one of (2) \_\_\_\_\_. We could not deny our (3) \_\_\_\_\_ experiences and senses. Yet our training was in many ways diametrically (4) \_\_\_\_\_ to the information, experiences and beliefs we had accumulated. So we remained (5) \_\_\_\_\_.

**SubQuestion No : 16**

**Q.16 Select the most appropriate option to fill in blank number 1.**

- Ans
- 1. thought
  - 2. train
  - 3. studied
  - 4. trained

Question ID : 26433070778

Status : Not Answered

Chosen Option : --

**Comprehension:**

In the following passage, some words have been deleted. Read the passage carefully and select the most appropriate option to fill in each blank.

I understood why these highly (1) \_\_\_\_\_ professionals remained in the closet. I was one of (2) \_\_\_\_\_. We could not deny our (3) \_\_\_\_\_ experiences and senses. Yet our training was in many ways diametrically (4) \_\_\_\_\_ to the information, experiences and beliefs we had accumulated. So we remained (5) \_\_\_\_\_.

**SubQuestion No : 17**

**Q.17 Select the most appropriate option to fill in blank number 2.**

- Ans
- 1. them
  - 2. then
  - 3. this
  - 4. these

Question ID : 26433070779

Status : Not Answered

Chosen Option : --

**Comprehension:**

In the following passage, some words have been deleted. Read the passage carefully and select the most appropriate option to fill in each blank.

I understood why these highly (1) \_\_\_\_\_ professionals remained in the closet. I was one of (2) \_\_\_\_\_. We could not deny our (3) \_\_\_\_\_ experiences and senses. Yet our training was in many ways diametrically (4) \_\_\_\_\_ to the information, experiences and beliefs we had accumulated. So we remained (5) \_\_\_\_\_.

**SubQuestion No : 18**

**Q.18 Select the most appropriate option to fill in blank number 3.**

- Ans
- 1. his
  - 2. theirs
  - 3. own
  - 4. hers

Question ID : 26433070780

Status : Not Answered

Chosen Option : --

**Comprehension:**

In the following passage, some words have been deleted. Read the passage carefully and select the most appropriate option to fill in each blank.

I understood why these highly (1) \_\_\_\_\_ professionals remained in the closet. I was one of (2) \_\_\_\_\_. We could not deny our (3) \_\_\_\_\_ experiences and senses. Yet our training was in many ways diametrically (4) \_\_\_\_\_ to the information, experiences and beliefs we had accumulated. So we remained (5) \_\_\_\_\_.

**SubQuestion No : 19**

**Q.19** Select the most appropriate option to fill in blank number 4.

- Ans  1. straight  
 2. opposite  
 3. perpendicular  
 4. diagonal

Question ID : 26433070781

Status : Not Answered

Chosen Option : --

**Comprehension:**

In the following passage, some words have been deleted. Read the passage carefully and select the most appropriate option to fill in each blank.

I understood why these highly (1) \_\_\_\_\_ professionals remained in the closet. I was one of (2) \_\_\_\_\_. We could not deny our (3) \_\_\_\_\_ experiences and senses. Yet our training was in many ways diametrically (4) \_\_\_\_\_ to the information, experiences and beliefs we had accumulated. So we remained (5) \_\_\_\_\_.

**SubQuestion No : 20**

**Q.20** Select the most appropriate option to fill in blank number 5.

- Ans  1. quiet  
 2. shut  
 3. quite  
 4. drawn

Question ID : 26433070782

Status : Not Answered

Chosen Option : --

Section : Part-D-Hindi

**Q.1** दिए गए मुहावरे में रेखांकित अंश के स्थान पर सबसे उपयुक्त विकल्प कौन-सा होगा?  
चेहरे पर मिठाईयां उड़ना।

- Ans  1. दवाईयां  
 2. हवाईयां  
 3. कलाईयां  
 4. रुलाईयां

Question ID : 26433066744

Status : Answered

Chosen Option : 2

Q.2 निम्नलिखित वाक्यांश के लिए एक सार्थक शब्द चुनिए।  
अनुचित बात के लिए हठ -

- Ans  1. दुराग्रह  
 2. पारदर्शक  
 3. दुर्गम्य  
 4. दृष्टव्य

Question ID : 26433062732  
Status : Answered  
Chosen Option : 1

Q.3 "घर के सभी सदस्यों ने मिलकर इसको विचार किया।" इस वाक्य का शुद्ध रूप क्या होगा?

- Ans  1. घर के सभी सदस्यों ने मिलकर इस पर विचार किया।  
 2. घर के सभी सदस्यों ने मिलकर इसमें विचार किया।  
 3. घर के सभी सदस्यों मिलकर इसे विचारा।  
 4. घर के सभी सदस्यों ने मिलकर इसे विचार किया।

Question ID : 26433066995  
Status : Answered  
Chosen Option : 1

Q.4 पूज्य व्यक्तियों की सेवा कीजिए।  
उपरोक्त वाक्य में रेखांकित पद के बदले निम्न में से उसका कौन-सा समानार्थी शब्द प्रयोग हो सकता है?

- Ans  1. शुश्रूषा  
 2. प्रार्थना  
 3. भक्ति  
 4. स्तुति

Question ID : 26433063098  
Status : Answered  
Chosen Option : 3

Q.5 निम्नलिखित विकल्पों में से किस एक वाक्य में क्रिया सम्बन्धी अशुद्धि है?

- Ans  1. उसका कहना था कि आप उसे जानते हैं।  
 2. आप वहाँ जाने सकेंगे।  
 3. मैंने उस पत्र पर हस्ताक्षर कर दिए।  
 4. वह भोजन कर चुका है।

Question ID : 26433062944  
Status : Answered  
Chosen Option : 2

Q.6 'राहुल की मित्रता सोहन के अनुकूल है।' इस वाक्य में प्रयुक्त 'अनुकूल' शब्द का अर्थ क्या होगा?

- Ans
- 1. किसी के लिए निकम्मा होना
  - 2. किसी के लिए उपयोगी न होना
  - 3. अनुपयुक्तता का भाव
  - 4. किसी पक्ष के लिए लाभकारी होना

Question ID : 26433080920  
Status : Answered  
Chosen Option : 4

Q.7 निम्न वाक्य के रेखांकित अंश को विकल्पों में दिए गए किस शब्द से बदला जा सकता है?  
बहुत-से लोग उनके विवाह-समारोह में सम्मिलित हुए।

- Ans
- 1. मदनोत्सव
  - 2. महोत्सव
  - 3. विवाहोत्सव
  - 4. तिलकोत्सव

Question ID : 26433066876  
Status : Answered  
Chosen Option : 3

Q.8 निम्न में से किस वाक्य में 'कर' के सही अनेकार्थी शब्द का प्रयोग हुआ है?

- Ans
- 1. नयन ने वह कार्य पूरा नहीं किया।
  - 2. यह अत्यंत गंभीर मामला है।
  - 3. विकास अत्यंत उत्साही था।
  - 4. राजीव ने अपने हाथ खड़े कर दिए।

Question ID : 26433085143  
Status : Answered  
Chosen Option : 4

Q.9 इनमें से कौन-सा शब्द 'चंदन' का पर्यायवाची नहीं है?

- Ans
- 1. मलयज
  - 2. नौध
  - 3. दारुसार
  - 4. गंधराज

Question ID : 26433066903  
Status : Not Answered  
Chosen Option : --

Q.10 संयुक्त वाक्य - 'वह दंड से बचना चाहता था, इसलिए भाग गया।' निम्नलिखित विकल्पों में से इस वाक्य के लिए कौन सा एक उचित सरल वाक्य होगा?

- Ans  1. दंड से बचने के लिए वह भाग गया।  
 2. वह दंड से बचना चाहता था भाग गया।  
 3. बचना चाहता था,इसलिए भाग गया।  
 4. वह बचना चाहता था,इसलिए भाग गया।

Question ID : 26433062441  
Status : Answered  
Chosen Option : 1

Q.11 निम्नलिखित वाक्य के रिक्त स्थान में सबसे उपयुक्त मुहावरा क्या होगा?  
'सेठ जी \_\_\_\_\_ का हिसाब लेते हैं'

- Ans  1. पाई- पाई  
 2. पानी-पानी  
 3. बात-बात  
 4. कदम-कदम

Question ID : 26433066730  
Status : Answered  
Chosen Option : 1

Q.12 निम्न वाक्य में द्रव्य वाचक संज्ञा का गलत प्रयोग हुआ है। त्रुटि पहचानिए।  
घर में घी पीसा गया।

- Ans  1. गया  
 2. घर में  
 3. घी  
 4. पीसा

Question ID : 26433079223  
Status : Answered  
Chosen Option : 4

Q.13 'बादल की तरह गरजने वाला'  
ऊपर दिए गए वाक्यांश के लिए एक शब्द क्या होगा?

- Ans  1. तमिस्रा  
 2. मेघनाद  
 3. हिमनद  
 4. व्यापाद

Question ID : 26433070057  
Status : Answered  
Chosen Option : 2



Q.14 उपस्थित व्यक्तियों में सब ने उसकी पूजा की।  
उपरोक्त वाक्य में रेखांकित शब्द के स्थान पर आ सकने वाला सर्वोचित विकल्प चुनिए।

- Ans  1. प्रशंसा  
 2. स्तुति  
 3. उपासना  
 4. कामना

Question ID : 26433084955  
Status : Answered  
Chosen Option : 3

Q.15 निम्नलिखित में से शुद्ध वाक्य कौन-सा है?

- Ans  1. विंध्याचल पर्वत भारत के मध्य भाग में स्थित है।  
 2. यहाँ शुद्ध भैंस का दूध मिलता है।  
 3. वह सोमवार के दिन आएगा।  
 4. ग्रीष्मकाल में दिन छोटा होते हैं।

Question ID : 26433066996  
Status : Answered  
Chosen Option : 1

**Comprehension:**

निम्नलिखित गद्यांश में कुछ शब्दों को हटा दिया गया है। दिए गए विकल्पों की सहायता से रिक्त स्थानों की पूर्ति कीजिए। प्रत्येक संख्या के लिए सबसे उपयुक्त विकल्प का चयन कीजिए।  
मानव सृष्टि पाँच 1. \_\_\_\_\_ से मिल कर बनी है। उनमें जल का 2. \_\_\_\_\_ किसी से कम नहीं है। सूर्य का ताप इस जल को 3. \_\_\_\_\_ के रूप में परिवर्तित करता है जो बादल बनकर पर्वतों पर बर्फ के रूप में तथा मैदानी क्षेत्रों में वर्षा के रूप में फिर आ जाता है। पर्वतीय क्षेत्रों में बर्फ पिघलकर नदियों के रूप में समुद्र तक की 4. \_\_\_\_\_ करती है। इस प्रकार समुद्र का जल फिर समुद्र में जाकर 5. \_\_\_\_\_ जाता है।

**SubQuestion No : 16**

Q.16 रिक्त स्थान 1 की पूर्ति के लिए सबसे उपयुक्त विकल्प का चयन कीजिए।

- Ans  1. प्रकारों  
 2. तत्वों  
 3. प्रकृति  
 4. कारणों

Question ID : 264330110957  
Status : Answered  
Chosen Option : 2

**Comprehension:**

निम्नलिखित गद्यांश में कुछ शब्दों को हटा दिया गया है। दिए गए विकल्पों की सहायता से रिक्त स्थानों की पूर्ति कीजिए। प्रत्येक संख्या के लिए सबसे उपयुक्त विकल्प का चयन कीजिए।  
मानव सृष्टि पाँच 1. \_\_\_\_\_ से मिल कर बनी है। उनमें जल का 2. \_\_\_\_\_ किसी से कम नहीं है। सूर्य का ताप इस जल को 3. \_\_\_\_\_ के रूप में परिवर्तित करता है जो बादल बनकर पर्वतों पर बर्फ के रूप में तथा मैदानी क्षेत्रों में वर्षा के रूप में फिर आ जाता है। पर्वतीय क्षेत्रों में बर्फ पिघलकर नदियों के रूप में समुद्र तक की 4. \_\_\_\_\_ करती है। इस प्रकार समुद्र का जल फिर समुद्र में जाकर 5. \_\_\_\_\_ जाता है।

**SubQuestion No : 17**

Q.17 रिक्त स्थान 2 की पूर्ति के लिए सबसे उपयुक्त विकल्प का चयन कीजिए।

- Ans
- 1. कारण
  - 2. पानी
  - 3. बचाव
  - 4. महत्व

Question ID : 264330110958

Status : Answered

Chosen Option : 4

**Comprehension:**

निम्नलिखित गद्यांश में कुछ शब्दों को हटा दिया गया है। दिए गए विकल्पों की सहायता से रिक्त स्थानों की पूर्ति कीजिए। प्रत्येक संख्या के लिए सबसे उपयुक्त विकल्प का चयन कीजिए।  
मानव सृष्टि पाँच 1. \_\_\_\_\_ से मिल कर बनी है। उनमें जल का 2. \_\_\_\_\_ किसी से कम नहीं है। सूर्य का ताप इस जल को 3. \_\_\_\_\_ के रूप में परिवर्तित करता है जो बादल बनकर पर्वतों पर बर्फ के रूप में तथा मैदानी क्षेत्रों में वर्षा के रूप में फिर आ जाता है। पर्वतीय क्षेत्रों में बर्फ पिघलकर नदियों के रूप में समुद्र तक की 4. \_\_\_\_\_ करती है। इस प्रकार समुद्र का जल फिर समुद्र में जाकर 5. \_\_\_\_\_ जाता है।

**SubQuestion No : 18**

Q.18 रिक्त स्थान 3 की पूर्ति के लिए सबसे उपयुक्त विकल्प का चयन कीजिए।

- Ans
- 1. वाष्प
  - 2. कण
  - 3. वर्षा
  - 4. बर्फ

Question ID : 264330110959

Status : Answered

Chosen Option : 1

**Comprehension:**

निम्नलिखित गद्यांश में कुछ शब्दों को हटा दिया गया है। दिए गए विकल्पों की सहायता से रिक्त स्थानों की पूर्ति कीजिए। प्रत्येक संख्या के लिए सबसे उपयुक्त विकल्प का चयन कीजिए।  
मानव सृष्टि पाँच 1. \_\_\_\_\_ से मिल कर बनी है। उनमें जल का 2. \_\_\_\_\_ किसी से कम नहीं है। सूर्य का ताप इस जल को 3. \_\_\_\_\_ के रूप में परिवर्तित करता है जो बादल बनकर पर्वतों पर बर्फ के रूप में तथा मैदानी क्षेत्रों में वर्षा के रूप में फिर आ जाता है। पर्वतीय क्षेत्रों में बर्फ पिघलकर नदियों के रूप में समुद्र तक की 4. \_\_\_\_\_ करती है। इस प्रकार समुद्र का जल फिर समुद्र में जाकर 5. \_\_\_\_\_ जाता है।

**SubQuestion No : 19**

Q.19 रिक्त स्थान 4 की पूर्ति के लिए सबसे उपयुक्त विकल्प का चयन कीजिए।

- Ans
- 1. स्थान
  - 2. चर्चा
  - 3. यात्रा
  - 4. क्षेत्र

Question ID : 264330110960

Status : Answered

Chosen Option : 3

**Comprehension:**

निम्नलिखित गद्यांश में कुछ शब्दों को हटा दिया गया है। दिए गए विकल्पों की सहायता से रिक्त स्थानों की पूर्ति कीजिए। प्रत्येक संख्या के लिए सबसे उपयुक्त विकल्प का चयन कीजिए।  
मानव सृष्टि पाँच 1. \_\_\_\_\_ से मिल कर बनी है। उनमें जल का 2. \_\_\_\_\_ किसी से कम नहीं है। सूर्य का ताप इस जल को 3. \_\_\_\_\_ के रूप में परिवर्तित करता है जो बादल बनकर पर्वतों पर बर्फ के रूप में तथा मैदानी क्षेत्रों में वर्षा के रूप में फिर आ जाता है। पर्वतीय क्षेत्रों में बर्फ पिघलकर नदियों के रूप में समुद्र तक की 4. \_\_\_\_\_ करती है। इस प्रकार समुद्र का जल फिर समुद्र में जाकर 5. \_\_\_\_\_ जाता है।

**SubQuestion No : 20**

Q.20 रिक्त स्थान 5 की पूर्ति के लिए सबसे उपयुक्त विकल्प का चयन कीजिए।

- Ans
- 1. बन
  - 2. दे
  - 3. बह
  - 4. मिल

Question ID : 264330110961

Status : Answered

Chosen Option : 4

## Constable GD in CAPFs SSF Rifleman GD in Assam Rifles and Sepoy in NCB Examination 2022

Roll Number	@Qmaths Telegram Channel
Candidate Name	@Qmaths Telegram Channel
Venue Name	ION Digital Zone iDZ Lahowal
Exam Date	24/01/2023
Exam Time	11:45 AM - 12:45 PM
Subject	Constable GD Examination 2022

### Section : Part-A-General Intelligence and Reasoning

Q.1 In a certain code language, 'STORY' is written as 'ZSPUT' and 'MUSIC' is written as 'DJTVN'. How will 'PRINT' be written in that language?

- Ans
- 1. QSJOU
  - 2. UOJSQ
  - 3. UJOSQ
  - 4. UOJTQ

Question ID : 26433069639  
Status : Answered  
Chosen Option : 2

Q.2 Select the correct mirror image of the given figure when the mirror is placed at MN as shown below.

aStRonaUT

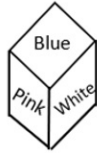
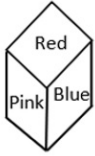
M

N

- Ans
- 1. TU6noЯt26
  - 2. Tυ6noЯt2A
  - 3. Tυ6noЯt2A
  - 4. Tυ6noЯt26

Question ID : 26433085563  
Status : Answered  
Chosen Option : 1

**Q.3** Two different positions of the same dice are shown having colours- Red, Blue, Pink, Green, white and black.  
Find the colour on the face opposite to the face showing 'Red'.



- Ans**
- 1. Green
  - 2. Pink
  - 3. Black
  - 4. White

Question ID : 26433085516  
Status : Answered  
Chosen Option : 1

**Q.4** If '+' means 'x', '÷' means '+', '-' means '÷', and 'x' means '-'. Which of the following will be the value of the expression?  
 $12 + 5 - 24 \times 3 \div 5$

- Ans**
- 1. 53
  - 2. 68
  - 3. 63
  - 4. 13

Question ID : 264330114187  
Status : Answered  
Chosen Option : 3

**Q.5** Which of the following numbers will replace the question marks (?) in the given series?  
101, 110, 122, 137, ?, 176, ?

- Ans**
- 1. 165, 230
  - 2. 160, 220
  - 3. 170, 240
  - 4. 155, 200

Question ID : 26433070227  
Status : Answered  
Chosen Option : 4

**Q.6** Which two signs should be interchanged to make the below equation mathematically correct?  
 $96 \times 8 + 27 \div 6 - 12 = 162$

- Ans**
- 1. + and -
  - 2. ÷ and -
  - 3. x and ÷
  - 4. x and +

Question ID : 264330117531  
Status : Answered  
Chosen Option : 3

Q.7 Which option represents the correct order of the given words as they would appear in the English dictionary?

- 1 Naughty
- 2 Nasty
- 3 Nail
- 4 Name
- 5 Natural

- Ans
- 1. 4,3,2,5,1
  - 2. 3,4,1,2,5
  - 3. 3,4,2,5,1
  - 4. 3,2,5,4,1

Question ID : 26433069275  
Status : Answered  
Chosen Option : 3

Q.8 There are seven people in a family. A is married to C. A has two children, B and E. A is the mother of B and E. B is the wife of L. P is the wife of E. L has one daughter G. E has one daughter K. How is C related to K ?

- Ans
- 1. Son
  - 2. Mother's father
  - 3. Father's father
  - 4. Brother

Question ID : 26433074596  
Status : Answered  
Chosen Option : 3

Q.9 Select the option that is related to the third word in the same way as the second word is related to the first word.

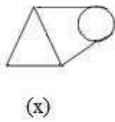
(The words must be considered as meaningful English words and must not be related to each other based on the number of letters/number of consonants/vowels in the word)

Ludo : Dice :: Cricket : ?

- Ans
- 1. Bat
  - 2. Fast
  - 3. Football
  - 4. Outdoor

Question ID : 26433079481  
Status : Answered  
Chosen Option : 1

**Q.10** Select the option figure in which the given figure (X) is embedded as its part  
(rotation is NOT allowed).



**Ans**

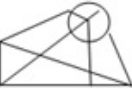
✓ 1.



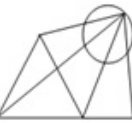
✗ 2.



✗ 3.



✗ 4.



Question ID : 26433069545  
Status : Answered  
Chosen Option : 4

**Q.11** Which of the following letter-clusters will replace the question mark (?) and complete the following letter-cluster series?  
CC, XD, SE, NF, ?

**Ans**

✓ 1. IG

✗ 2. IF

✗ 3. JG

✗ 4. IH

Question ID : 26433067289  
Status : Answered  
Chosen Option : 2

**Q.12** Which of the following numbers will replace the question marks (?) in the given series?  
1, 3, 6, 10, ?, ?, 28, 36, 45, 55

**Ans**

✗ 1. 21, 24

✗ 2. 12, 15

✓ 3. 15, 21

✗ 4. 16, 24

Question ID : 26433069053  
Status : Answered  
Chosen Option : 3

Q.13 Which of the following letter-clusters will replace the question mark (?) in the given series?

FJOT, GIPS, ?, IGRQ, JFSP

- Ans
- 1. IHPR
  - 2. HIQQ
  - 3. HHRQ
  - 4. HHQR

Question ID : 26433076435  
 Status : Answered  
 Chosen Option : 3

Q.14 Which figure should replace the question mark (?) if the series were to be continued?

□	9	↑	↑	X	S	S	↑	X	X	B	9	
	X			4			B			□		?
V	4	S	□	9	V	V	□	9	S	↑	V	

Ans

- 1. 

V	X	B
	9	
□	S	↑
- 2. 

B	9	X
	6	
↑	V	S
- 3. 

9	X	B
	6	
V	S	↑
- 4. 

9	X	B
	□	
V	S	↑

Question ID : 26433076626  
 Status : Answered  
 Chosen Option : 2



Q.15 Select the option that is related to the fifth number in the same way as the second number is related to the first number and the fourth number is related to the third number.

34 : 5 :: 13 : 2 :: 27 : ?

- Ans
- 1. 6
  - 2. 4
  - 3. 11
  - 4. 9

Question ID : 26433069419  
Status : Answered  
Chosen Option : 1

Q.16 Five people P, Q, R, S, and T are sitting in a straight row facing North. P is sitting to the immediate right of S. S is sitting between T and P. Q is sitting at the extreme left of the row. R is sitting to the immediate right of Q. Who is sitting between Q and T?

- Ans
- 1. T
  - 2. S
  - 3. R
  - 4. P

Question ID : 26433074623  
Status : Answered  
Chosen Option : 3

Q.17 Six students are sitting around a circular table facing the centre. F is an immediate neighbour of A. D sits second to the right of E. B is an immediate neighbour of E and sits second to the right of C. F sits second to the right of D. A is not an immediate neighbour of E. Who sit between D and C from the right of D?

- Ans
- 1. A and B
  - 2. A and F
  - 3. F and B
  - 4. A and E

Question ID : 26433086263  
Status : Answered  
Chosen Option : 2

Q.18 Select the option that is related to the third word in the same way as the second word is related to the first word. (The words must be considered as meaningful English words and must not be related to each other based on the number of letters/number of consonants/vowels in the word.)

Denmark : Copenhagen :: Kenya : ?

- Ans
- 1. Athens
  - 2. Nairobi
  - 3. Maputo
  - 4. Oslo

Question ID : 26433067372  
Status : Answered  
Chosen Option : 2

Q.19 In a certain language, TRAVEL is coded as GIZEVO, POLICY is coded as KLORXB, how will FAMILY be coded in the same language?

- Ans  1. UZNROB  
 2. GBNJMZ  
 3. YLIMAF  
 4. MAFYIL

Question ID : 26433074594  
Status : Answered  
Chosen Option : 2

Q.20 Three statements are given followed by three conclusions. Assuming the statements to be true, even if they seem to be at variance with commonly known facts, decide which of the conclusions logically follow(s) from the statements.

Statements:

Some silks are cottons.

All cottons are jutes.

Some jutes are not silks.

Conclusions:

1. Some jutes are silks.

2. All silks are jutes.

3. All cottons are silks.

- Ans  1. Only conclusion 3 follows.  
 2. Only conclusions 1 and 2 follow.  
 3. Only conclusion 1 follows.  
 4. Only conclusions 2 and 3 follow.

Question ID : 26433089425  
Status : Answered  
Chosen Option : 3

Section : Part-B-General Knowledge and General awareness

Q.1 \_\_\_\_\_ is the first state in India which has made roof top rainwater harvesting structure compulsory to all the houses across the state.

- Ans  1. Tamil Nadu  
 2. Haryana  
 3. West Bengal  
 4. Uttar Pradesh

Question ID : 264330116001  
Status : Answered  
Chosen Option : 1

Q.2 In \_\_\_\_\_ the Muslim League had moved a resolution demanding "Independent States" for Muslims in the north-western and eastern areas of the country.

- Ans  1. 1942  
 2. 1943  
 3. 1940  
 4. 1938

Question ID : 264330115699  
Status : Answered  
Chosen Option : 3

Q.3 The \_\_\_\_\_, 2019 is an Act of the Parliament of India criminalising triple talaq.

- Ans  1. Muslim Women (Protection of Rights on Marriage) Act  
 2. Protection of Children from Sexual Offences Act  
 3. Women right Act  
 4. Protection of Women Act

Question ID : 264330116225  
Status : Answered  
Chosen Option : 1

Q.4 In its first phase, The National Rural Employment Guarantee Act initially covered how many districts before it was extended?

- Ans  1. 300  
 2. 500  
 3. 400  
 4. 200

Question ID : 264330116079  
Status : Answered  
Chosen Option : 1

Q.5 Identify the correct statement with respect to Earth.

- Ans  1. The diameter of the equator increases till the poles.  
 2. The radius of earth increases from the poles to the equator.  
 3. The diameter of earth decreases from the poles to the equator.  
 4. The radius of earth decreases from the poles to the equator.

Question ID : 26433086738  
Status : Answered  
Chosen Option : 2

Q.6 Which Sub-Section of Fundamental Duties talks about the duty to cherish and follow the noble ideals that inspired our national struggle for freedom?

- Ans  1. Sub-Section b  
 2. Sub-Section d  
 3. Sub-Section c  
 4. Sub-Section a

Question ID : 26433054525  
Status : Answered  
Chosen Option : 1

Q.7 \_\_\_\_\_ are foreign currency assets held by the central banks of countries.

- Ans  1. Rate exchange  
 2. Foreign exchange Reserves  
 3. Credit control  
 4. Local exchange

Question ID : 264330115318  
Status : Answered  
Chosen Option : 2

**Q.8 In Cricket, what is the distance between two wickets?**

- Ans**  1. 22 yards  
 2. 21 Yards  
 3. 23 yards  
 4. 24 yards

Question ID : 264330116296  
Status : Answered  
Chosen Option : 1

**Q.9 Which among the following festivals is also known as the festival of winter season?**

- Ans**  1. Moatsu  
 2. Chakan Gaan-Ngai  
 3. Wangala  
 4. Chapchar Kut

Question ID : 264330115092  
Status : Answered  
Chosen Option : 2

**Q.10 The second phase of green revolution in India existed from \_\_\_\_\_.**

- Ans**  1. mid-1950s to mid-1960s  
 2. mid-1960s to mid-1970s  
 3. mid-1970s to mid-1980s  
 4. mid-1980s to mid-1990s

Question ID : 264330116159  
Status : Answered  
Chosen Option : 3

**Q.11 Inamgaon village is located in which state of India?**

- Ans**  1. Madhya Pradesh  
 2. Maharashtra  
 3. Punjab  
 4. Kerala

Question ID : 26433090570  
Status : Answered  
Chosen Option : 1

**Q.12 What is a group of industries that tend to come together to make use of the advantages offered by the urban centers known as ?**

- Ans**  1. rural economies  
 2. amalgamation economies  
 3. urban economies  
 4. agglomeration economies

Question ID : 264330115565  
Status : Answered  
Chosen Option : 3

**Q.13 Whom has Samir Venkatapathy Kamat replaced as the new Chairman of Defence Research and Development Organisation in August 2022??**

- Ans**
- 1. Bhujanga Rao
  - 2. Lalit Kumar
  - 3. Rajwant Singh
  - 4. G Satheesh Reddy

Question ID : 264330115021  
Status : Answered  
Chosen Option : 4

**Q.14 Zo Mal Lok, is the famous dance associated with which of the following states?**

- Ans**
- 1. Bihar
  - 2. Uttarakhand
  - 3. Sikkim
  - 4. Haryana

Question ID : 26433071662  
Status : Answered  
Chosen Option : 3

**Q.15 Where does hydrarch succession take place?**

- Ans**
- 1. semi-arid areas
  - 2. grasslands
  - 3. wet areas
  - 4. dry areas

Question ID : 264330115255  
Status : Answered  
Chosen Option : 2

**Q.16 The period of first five year plan was between \_\_\_\_\_.**

- Ans**
- 1. 1951-1956
  - 2. 1910-1915
  - 3. 1960-1965
  - 4. 1980-1985

Question ID : 264330115372  
Status : Answered  
Chosen Option : 1

**Q.17 Gopal Prasad Dubey won Padma Shri in which dance form?**

- Ans**
- 1. Creative dance
  - 2. Mohiniyattam
  - 3. Chhau
  - 4. Kuchipudi

Question ID : 264330115879  
Status : Answered  
Chosen Option : 3

Q.18 In India, the Executive power of the state is vested in \_\_\_\_\_.

- Ans
- 1. Council of Ministers
  - 2. Governor
  - 3. Chief Justice of High Court
  - 4. Chief Minister

Question ID : 26433086853  
Status : Answered  
Chosen Option : 2

Q.19 Which of the following state won the maximum number of silver medals in the 2015 National Games of India?

- Ans
- 1. Kerala
  - 2. Goa
  - 3. Madhya Pradesh
  - 4. Haryana

Question ID : 264330115958  
Status : Answered  
Chosen Option : 4

Q.20 Which political leader succeeded Bandhu Tirkey to become Member of Legislative Assembly from Mandar, Jharkhand in June 2022?

- Ans
- 1. Dasrath Tirkey
  - 2. Shilpi Neha Tirkey
  - 3. Arvind Kejriwal
  - 4. Raghav Chadha

Question ID : 264330114906  
Status : Answered  
Chosen Option : 4

Section : Part-C-Elementary Mathematics

Q.1 Compound interest of Rs.21,515 is received on sum of Rs.65,000 in a period of three years. What was the rate of interest on which the sum was being compounded annually?

- Ans
- 1. 11%
  - 2. 12%
  - 3. 13%
  - 4. 10%

Question ID : 26433075862  
Status : Answered  
Chosen Option : 1

Q.2 Mona purchased two handbags for Rs.1,500 each. She sold these bags, gaining 8% on one bag and loss 4% on the other. Find her gain or loss percent in the whole transaction.

- Ans
- 1. 1%
  - 2. 2%
  - 3. 4%
  - 4. 3%

Question ID : 26433066360  
Status : Answered  
Chosen Option : 2

Q.3 A single discount equivalent to three successive discounts of 20%, 5% and 2% is:

- Ans
- 1. 25.25%
  - 2. 26.52%
  - 3. 27%
  - 4. 25.52%

Question ID : 26433087364  
Status : Answered  
Chosen Option : 4

Q.4 A vegetable seller has a faulty weight of 2 kg which is 100g less than the actual weight. He sold 2 kg of potatoes to a customer using the same faulty weight for Rs.44. The cost price of potatoes to the seller was Rs.18 per kg. How much profit did he earn on selling the potatoes?

- Ans
- 1. Rs.9.8
  - 2. Rs.9.2
  - 3. Rs.8.9
  - 4. Rs.8

Question ID : 26433075060  
Status : Answered  
Chosen Option : 1

Q.5 Umesh and Ramesh can complete a work in 28 and 21 days, respectively. Starting with Umesh, they work on alternate days. In how many days will the work be completed?

- Ans
- 1. 16 days
  - 2. 26 days
  - 3. 12 days
  - 4. 24 days

Question ID : 26433075741  
Status : Answered  
Chosen Option : 4

Q.6 Find the area of the triangle whose sides are 13 cm, 14 cm and 15 cm.

- Ans
- 1. 64 cm<sup>2</sup>
  - 2. 84 cm<sup>2</sup>
  - 3. 94 cm<sup>2</sup>
  - 4. 74 cm<sup>2</sup>

Question ID : 26433075173  
Status : Answered  
Chosen Option : 2

Q.7 Find the third proportional of  $(b^2 - a^2)$  and  $(b^2 - ab)$ .

- Ans
- 1.  $\frac{b^2(b-a)}{(b+a)}$
  - 2.  $(b-a)$
  - 3.  $\frac{b^2(b+a)}{(b-a)}$
  - 4.  $(b+a)$

Question ID : 26433075553  
Status : Answered  
Chosen Option : 3

Q.8 Find the average of all prime numbers up to 40.(Correct to 2 decimal places)

- Ans
- 1. 18.42
  - 2. 17.42
  - 3. 16.42
  - 4. 19.42

Question ID : 26433080150  
Status : Answered  
Chosen Option : 3

Q.9 In a sports club, 86% of the members are men and 14% of the members are women. If the average age of the men is 25 years and the average age of the women is 35 years, then what is the average age (in years) of all the members?

- Ans
- 1. 26.8
  - 2. 26.4
  - 3. 26.6
  - 4. 26.2

Question ID : 26433082958  
Status : Answered  
Chosen Option : 2

Q.10 A man borrows ₹3,310 and undertakes to pay it back with compound interest at 10% per annum in three equal yearly instalments at the end of the first, second and third years. What is the amount of each instalment?

- Ans
- 1. ₹1,021
  - 2. ₹2,110
  - 3. ₹1,120
  - 4. ₹1,331

Question ID : 26433086272  
Status : Answered  
Chosen Option : 4



Q.11 The value of  $3\frac{6}{7} \div 5\frac{1}{7} \times 3\frac{1}{2} \div 5\frac{1}{4}$  is:

- Ans
- 1.  $\frac{1}{5}$
  - 2.  $\frac{1}{2}$
  - 3.  $\frac{3}{7}$
  - 4.  $\frac{1}{7}$

Question ID : 26433074447  
Status : Answered  
Chosen Option : 2

Q.12 By selling an article for Rs.880, a shopkeeper gains 10%. Due to reduction on sales, he allows a discount of 25% on previous selling price. His gain/loss percentage during the sale is:

- Ans
- 1. gain 17.5%
  - 2. loss 17.5%
  - 3. loss 18.6%
  - 4. gain 18.6%

Question ID : 26433066312  
Status : Answered  
Chosen Option : 2

Q.13 The length of a train is 150 metres. In 3 seconds, it passes a man moving at a speed of 2 km/h in the same direction as the train. Determine the train's speed.

- Ans
- 1. 190 km/h
  - 2. 167 km/h
  - 3. 172 km/h
  - 4. 182 km/h

Question ID : 26433065294  
Status : Answered  
Chosen Option : 2

Q.14 In an election between two candidates, the candidate getting 70% of the votes polled is elected by a majority of 16,000 votes. The number of votes polled in favour of the winning candidate is:

- Ans
- 1. 24000
  - 2. 30000
  - 3. 26000
  - 4. 28000

Question ID : 26433082964  
Status : Answered  
Chosen Option : 4

Q.15 Prasad alone can complete a work in 144 days. How many people were required with the same efficiency as Prasad to complete the same work in 16 days?

- Ans  1. 9  
 2. 7  
 3. 11  
 4. 6

Question ID : 264330116909  
Status : Answered  
Chosen Option : 3

Q.16 Find the volume of the hemisphere whose radius is 5.5 cm. (upto two decimal points)

- Ans  1. 34860 cm<sup>3</sup>  
 2. 348.60 cm<sup>3</sup>  
 3. 3486.0 cm<sup>3</sup>  
 4. 34.860 cm<sup>3</sup>

Question ID : 26433075509  
Status : Answered  
Chosen Option : 2

Q.17 Which of the following pairs of numbers are relatively prime?

- Ans  1. 24 and 38  
 2. 24 and 92  
 3. 39 and 68  
 4. 24 and 68

Question ID : 26433082593  
Status : Answered  
Chosen Option : 3

Q.18 Prakash can swim at a speed of 32 km/h in upstream and 44 km/h in downstream. What is the speed of the current?

- Ans  1. 4 km/h  
 2. 5 km/h  
 3. 6 km/h  
 4. 7 km/h

Question ID : 26433075564  
Status : Answered  
Chosen Option : 3

Q.19 Abdul's salary is Rs.1,50,000 per month. He spends 10% of his salary on paying the school fees. He got an increment of 3% in his salary in the month of July, but the school fee was hiked by 5% the same month. What will be the net change in his saving in the month of July if the other expenditures are the same?

- Ans  1. Decrease of Rs.3,750  
 2. Decrease of Rs.2,750  
 3. Increase of Rs.3,750  
 4. Increase of Rs.2,750

Question ID : 26433075967  
Status : Answered  
Chosen Option : 3

**Q.20** When the same number is subtracted from each of 6, 8, 12 and 20, the resulting numbers are in proportion. The number subtracted is:

- Ans
- 1. 2
  - 2. 3
  - 3. 6
  - 4. 4

Question ID : 26433082391  
Status : Answered  
Chosen Option : 2

Section : Part-D-English

**Q.1** Select the most appropriate ANTONYM of the underlined word.

We must learn to negotiate with every difficult situation in life.

- Ans
- 1. Discuss
  - 2. Disagree
  - 3. Practice
  - 4. Bargain

Question ID : 26433089762  
Status : Answered  
Chosen Option : 2

**Q.2** The sentence given below has one misspelt word. Spot the INCORRECTLY spelt word and select its correct spelling.

Her husband's death left a vacuum in her life.

- Ans
- 1. Vacuum
  - 2. Vakum
  - 3. Vaccum
  - 4. Vaccuum

Question ID : 26433073558  
Status : Answered  
Chosen Option : 3

**Q.3** The following sentence has been split into four segments. Identify the segment that contains a grammatical error.

The patient / look / a little more cheerful / this morning

- Ans
- 1. The patient
  - 2. this morning
  - 3. look
  - 4. a little more cheerful

Question ID : 26433088099  
Status : Answered  
Chosen Option : 3

Q.4 Select the most appropriate ANTONYM of the given word.

Recede

- Ans  1. Advance  
 2. Argue  
 3. Ransack  
 4. Irritate

Question ID : 26433071974  
Status : Answered  
Chosen Option : 1

Q.5 Fill in the blank in the following sentence using the ANTONYM of the word given in the brackets.

Can you \_\_\_\_\_ the UNO cards on the table? (gather)

- Ans  1. spread  
 2. lift  
 3. collect  
 4. place

Question ID : 26433088828  
Status : Answered  
Chosen Option : 1

Q.6 Select the most appropriate meaning of the underlined idiom.

The husband promised the earth to his wife.

- Ans  1. Promised an impossible thing  
 2. Promised an inexpensive thing  
 3. Promised land  
 4. Promised a necklace

Question ID : 26433072175  
Status : Answered  
Chosen Option : 1

Q.7 Select the most appropriate synonym of the given word.

Proficient

- Ans  1. Condensed  
 2. Inadequate  
 3. Vulgar  
 4. Skilful

Question ID : 26433073434  
Status : Answered  
Chosen Option : 4

Q.8 Select the INCORRECTLY spelt word.

- Ans  1. Marrige  
 2. Breakage  
 3. Wreckage  
 4. Drainage

Question ID : 26433071819  
Status : Answered  
Chosen Option : 1

Q.9 Select the most appropriate option to fill in the blank.

It is believed that God is \_\_\_\_\_.

- Ans
- 1. pacifist
  - 2. optimist
  - 3. omnipresent
  - 4. omnivorous

Question ID : 26433073407  
Status : Answered  
Chosen Option : 3

Q.10 Select the most appropriate synonym of the given word.

Hades is the god of the underworld and wealth in Greek mythology.

- Ans
- 1. riches
  - 2. sterility
  - 3. debts
  - 4. shades

Question ID : 26433084597  
Status : Answered  
Chosen Option : 1

Q.11 Select the most appropriate option that can substitute the underlined segment in the given sentence.

The enthusiastic readers are eagerly waiting of the quick completion of her forthcoming novel.

- Ans
- 1. eagerly waiting about the quick
  - 2. eagerly waiting in the quick
  - 3. eagerly waiting for the quick
  - 4. eagerly waiting on the quick

Question ID : 264330100992  
Status : Answered  
Chosen Option : 3

Q.12 Select the most appropriate synonym of the word given in brackets to fill in the blank.

He had \_\_\_\_\_ (Enough) time to finish the task.

- Ans
- 1. sufficient
  - 2. insufficient
  - 3. massive
  - 4. perpetual

Question ID : 26433089077  
Status : Answered  
Chosen Option : 1

Q.13 Choose the appropriate meaning of the underlying idiom.

She wants to reach the target by hook or by crook.

- Ans  1. By one or the other means  
 2. With all of one's (her) belongings  
 3. Without deception  
 4. Very rapidly

Question ID : 26433084691  
Status : Answered  
Chosen Option : 1

Q.14 Select the most appropriate option that can substitute the underlined segment in the given sentence. If there is no need to substitute it, select 'No substitution'.

Sea levels have been risen all around the world threatening natural calamities like tsunamis, floods, etc.

- Ans  1. No substitution  
 2. will rising  
 3. have been rising  
 4. are raised

Question ID : 26433088911  
Status : Answered  
Chosen Option : 3

Q.15 Select the most appropriate ANTONYM of the underlined word in the given sentence.

We all must agree on the fact that life is fragile.

- Ans  1. healthy  
 2. infirm  
 3. violent  
 4. weak

Question ID : 26433092095  
Status : Answered  
Chosen Option : 1

**Comprehension:**

In the following passage, some words have been deleted. Read the passage carefully and select the most appropriate option to fill in each blank.

There are over 9000 species of birds on this planet (1) \_\_\_\_\_ of which over 1360 are found in India alone. 81 species of birds (2) \_\_\_\_\_ endemic to India. Because birds are found everywhere, and in all (3) \_\_\_\_\_ zones, their sizes, shapes and wings are (4) \_\_\_\_\_ according to the needs of their habitat. For instance, eagles and hawks have massive soaring wings with primary feather that (5) \_\_\_\_\_ out and allow them to soar high in the sky.

SubQuestion No : 16

Q.16 Select the most appropriate option to fill in blank number 1.

- Ans  1. out  
 2. some  
 3. across  
 4. in

Question ID : 26433063169  
Status : Answered  
Chosen Option : 1

**Comprehension:**

In the following passage, some words have been deleted. Read the passage carefully and select the most appropriate option to fill in each blank.

There are over 9000 species of birds on this planet (1) \_\_\_\_\_ of which over 1360 are found in India alone. 81 species of birds (2) \_\_\_\_\_ endemic to India. Because birds are found everywhere, and in all (3) \_\_\_\_\_ zones, their sizes, shapes and wings are (4) \_\_\_\_\_ according to the needs of their habitat. For instance, eagles and hawks have massive soaring wings with primary feather that (5) \_\_\_\_\_ out and allow them to soar high in the sky.

**SubQuestion No : 17**

**Q.17 Select the most appropriate option to fill in blank number 2.**

- Ans  1. was  
 2. were  
 3. are  
 4. is

Question ID : 26433063170  
Status : Answered  
Chosen Option : 4

**Comprehension:**

In the following passage, some words have been deleted. Read the passage carefully and select the most appropriate option to fill in each blank.

There are over 9000 species of birds on this planet (1) \_\_\_\_\_ of which over 1360 are found in India alone. 81 species of birds (2) \_\_\_\_\_ endemic to India. Because birds are found everywhere, and in all (3) \_\_\_\_\_ zones, their sizes, shapes and wings are (4) \_\_\_\_\_ according to the needs of their habitat. For instance, eagles and hawks have massive soaring wings with primary feather that (5) \_\_\_\_\_ out and allow them to soar high in the sky.

**SubQuestion No : 18**

**Q.18 Select the most appropriate option to fill in blank number 3.**

- Ans  1. climatic  
 2. administrative  
 3. atmospheric  
 4. aerial

Question ID : 26433063171  
Status : Answered  
Chosen Option : 1

**Comprehension:**

In the following passage, some words have been deleted. Read the passage carefully and select the most appropriate option to fill in each blank.

There are over 9000 species of birds on this planet (1) \_\_\_\_\_ of which over 1360 are found in India alone. 81 species of birds (2) \_\_\_\_\_ endemic to India. Because birds are found everywhere, and in all (3) \_\_\_\_\_ zones, their sizes, shapes and wings are (4) \_\_\_\_\_ according to the needs of their habitat. For instance, eagles and hawks have massive soaring wings with primary feather that (5) \_\_\_\_\_ out and allow them to soar high in the sky.

**SubQuestion No : 19**

**Q.19 Select the most appropriate option to fill in blank number 4.**

- Ans  1. changed  
 2. adopted  
 3. converted  
 4. adapted

Question ID : 26433063172  
Status : Answered  
Chosen Option : 4

**Comprehension:**

In the following passage, some words have been deleted. Read the passage carefully and select the most appropriate option to fill in each blank.

There are over 9000 species of birds on this planet (1) \_\_\_\_\_ of which over 1360 are found in India alone. 81 species of birds (2) \_\_\_\_\_ endemic to India. Because birds are found everywhere, and in all (3) \_\_\_\_\_ zones, their sizes, shapes and wings are (4) \_\_\_\_\_ according to the needs of their habitat. For instance, eagles and hawks have massive soaring wings with primary feather that (5) \_\_\_\_\_ out and allow them to soar high in the sky.

**SubQuestion No : 20****Q.20 Select the most appropriate option to fill in blank number 5.**

- Ans  1. reach  
 2. grow  
 3. rise  
 4. spread

Question ID : 26433063173  
Status : Answered  
Chosen Option : 4

**Section : Part-D-Hindi****Q.1 निम्नलिखित वाक्य में से शुद्ध वाक्य कौन सा है?**

- Ans  1. यह कमर सब कमरों से बड़ा है।  
 2. यह कमरा सब कमर से बड़ा है।  
 3. यह कमरा सब कमरों से बड़ा है।  
 4. यह कमरा सब कमरों से बड़ है।

Question ID : 26433066843  
Status : Not Answered  
Chosen Option : --

**Q.2 निम्नलिखित वाक्यों में से कौन सा कर्म कारक का एक उदाहरण है?**

- Ans  1. हमसे पढ़ा नहीं जाएगा।  
 2. कर्मवीर पथ से नहीं डिगता।  
 3. मैंने वस्त्र धारण किया है।  
 4. ज्वाला प्रसाद को स्नान करते दस बज गए।

Question ID : 26433085033  
Status : Not Answered  
Chosen Option : --

**Q.3 निम्नलिखित में से क्रिया विशेषण शब्द नहीं है-**

- Ans  1. पुस्तक  
 2. शायद  
 3. पहले  
 4. मीठा

Question ID : 26433085046  
Status : Not Answered  
Chosen Option : --



Q.4 निम्नलिखित वाक्य के रिक्त स्थान में सबसे उपयुक्त मुहावरा क्या होगा?  
'प्रेमचंद की किताबें \_\_\_\_\_ है।'

- Ans
- 1. बाएँ हाथ का खेल
  - 2. पानी-पानी होना
  - 3. हाथों-हाथ बिक जाती
  - 4. सूर्य को दिया दिखाना

Question ID : 26433066726  
Status : Not Answered  
Chosen Option : --

Q.5 वर्तनी की दृष्टि से अशुद्ध वाक्य का चयन कीजिए-

- Ans
- 1. गाड़ी के समय पर आने की सम्भावना है।
  - 2. लड़की अपनी पुस्तक पढ़ रही है।
  - 3. गली का तीसरा मकान मेरा घर है।
  - 4. ये इमारतें ऊँचाई में भिन्न नहीं हैं।

Question ID : 26433062890  
Status : Not Answered  
Chosen Option : --

Q.6 निम्नलिखित में से क्या 'पानी' का अर्थ नहीं होता है?

- Ans
- 1. इज्जत
  - 2. बिजली
  - 3. जल
  - 4. चमक

Question ID : 26433080943  
Status : Not Answered  
Chosen Option : --

Q.7 विकल्पों में से क्या निम्न वाक्य के रेखांकित अंश के स्थान पर आएगा?  
प्रेमचंद ने गोदान की रचना लिखी है।

- Ans
- 1. की
  - 2. सुनी
  - 3. कि
  - 4. पढ़ी

Question ID : 26433066871  
Status : Not Answered  
Chosen Option : --

Q.8 निम्नलिखित विकल्पों में से 'जो भेदा न जा सके' वाक्यांश के लिए एक सार्थक शब्द क्या होगा ?

- Ans
- 1. निर्द्वन्द्व
  - 2. अभेद्य
  - 3. द्वंद्व
  - 4. प्रतिबन्ध

Question ID : 26433062473  
Status : Not Answered  
Chosen Option : --

Q.9 विकल्पों में दिए गए समानार्थी शब्दों में से सर्वोचित शब्द का प्रयोग करके दिए गए वाक्य के रिक्त स्थान की पूर्ति करें।

मिल मज़दूर मिल में आठ-आठ घंटे लगातार \_\_\_\_\_ करते हैं।

- Ans
- 1. उद्यम
  - 2. अभ्यास
  - 3. ज़ोर
  - 4. श्रम

Question ID : 26433062930  
Status : Not Answered  
Chosen Option : --

Q.10 निम्नलिखित वाक्य में रेखांकित खंड के स्थान पर प्रयुक्त होने वाले सबसे उपयुक्त विकल्प का चयन कीजिए।

कोयला सूखकर राख हो गया।

- Ans
- 1. चलकर
  - 2. जलकर
  - 3. तपकर
  - 4. गीला होकर

Question ID : 26433079569  
Status : Not Answered  
Chosen Option : --

Q.11 बार-बार बोलना

ऊपर दिए गए वाक्यांश के लिए एक शब्द क्या होगा?

- Ans
- 1. विलाप
  - 2. प्रलाप
  - 3. एकालाप
  - 4. अनुलाप

Question ID : 26433070052  
Status : Not Answered  
Chosen Option : --

Q.12 'मुकुट में लगा कोहिनूर बहुमूल्य हीरा है।' इस वाक्य में प्रयुक्त 'बहुमूल्य' शब्द का अर्थ क्या है?

- Ans
- 1. साधारण से कम कीमत वाला
  - 2. जिसका कोई मूल्य न हो
  - 3. अत्यधिक कीमत वाला
  - 4. साधारण कीमत वाला

Question ID : 26433069734  
Status : Not Answered  
Chosen Option : --

Q.13 गृहस्थ हो या \_\_\_\_\_ पेट की भूख तो सबको ही सताती है।  
'मुनि' के पर्याय से उपरोक्त वाक्य पूर्ण करें।

- Ans
- 1. भोगी
  - 2. निरोगी
  - 3. वैरागी
  - 4. अलौकिक

Question ID : 26433084988  
Status : Not Answered  
Chosen Option : --

Q.14 मिश्र वाक्य- 'इस गाँव का जो प्रधान है, वह अच्छा आदमी नहीं है।'  
उपरोक्त वाक्य के लिए निम्नलिखित विकल्पों में से कौन सा एक उचित सरल वाक्य होगा?

- Ans
- 1. जो प्रधान है, वह बिलकुल अच्छा आदमी नहीं है।
  - 2. इस गाँव का प्रधान अच्छा आदमी नहीं है।
  - 3. प्रधान अच्छा आदमी इस गाँव का नहीं है।
  - 4. गाँव का जो प्रधान वह अच्छा आदमी नहीं है।

Question ID : 26433062437  
Status : Not Answered  
Chosen Option : --

Q.15 निम्न में से किस मुहावरे का अर्थ बुरी तरह पछताना है?

- Ans
- 1. कुएं में गिरना
  - 2. अंगारों पर लोटना
  - 3. आँखें चार होना
  - 4. आठ- आठ आंसू रोना

Question ID : 26433062815  
Status : Not Answered  
Chosen Option : --

**Comprehension:**

निम्नलिखित गद्यांश में कुछ शब्दों को हटा दिया गया है। दिए गए विकल्पों की सहायता से रिक्त स्थानों की पूर्ति कीजिए। प्रत्येक संख्या के लिए सबसे उपयुक्त विकल्प का चयन कीजिए।

महिलाएं 1. \_\_\_\_\_ की भांति शिक्षित हो रही हैं और 2. \_\_\_\_\_ में कार्य भी कर रही हैं। जीवन के तकरीबन हर क्षेत्र में चाहे वह 3. \_\_\_\_\_ हो या सामाजिक, सरकारी हो या गैर-सरकारी नौकरी, नारी हर जगह अपने 4. \_\_\_\_\_ बढ़ा चुकी है। नारी को स्वावलम्बी और 5. \_\_\_\_\_ बनने के लिए नौकरी का सहारा लेना पड़ा। इससे उनका आत्मविश्वास बढ़ता है। वह अपनी नौकरी भी पूरी जिम्मेदारी के साथ निभाती है।

**SubQuestion No : 16**

Q.16 रिक्त स्थान 1 की पूर्ति के लिए सबसे उपयुक्त विकल्प का चयन करें।

- Ans
- 1. पुरुषों
  - 2. युवाओं
  - 3. छात्रों
  - 4. बालकों

Question ID : 264330110933  
Status : Not Answered  
Chosen Option : --

**Comprehension:**

निम्नलिखित गद्यांश में कुछ शब्दों को हटा दिया गया है। दिए गए विकल्पों की सहायता से रिक्त स्थानों की पूर्ति कीजिए। प्रत्येक संख्या के लिए सबसे उपयुक्त विकल्प का चयन कीजिए।

महिलाएं 1. \_\_\_\_\_ की भांति शिक्षित हो रही हैं और 2. \_\_\_\_\_ में कार्य भी कर रही हैं। जीवन के तकरीबन हर क्षेत्र में चाहे वह 3. \_\_\_\_\_ हो या सामाजिक, सरकारी हो या गैर-सरकारी नौकरी, नारी हर जगह अपने 4. \_\_\_\_\_ बढ़ा चुकी है। नारी को स्वावलम्बी और 5. \_\_\_\_\_ बनने के लिए नौकरी का सहारा लेना पड़ा। इससे उनका आत्मविश्वास बढ़ता है। वह अपनी नौकरी भी पूरी जिम्मेदारी के साथ निभाती है।

**SubQuestion No : 17**

Q.17 रिक्त स्थान 2 की पूर्ति के लिए सबसे उपयुक्त विकल्प का चयन करें।

- Ans
- 1. दफ्तरों
  - 2. दुकानों
  - 3. मंदिरों
  - 4. घर में

Question ID : 264330110934  
Status : Not Answered  
Chosen Option : --

**Comprehension:**

निम्नलिखित गद्यांश में कुछ शब्दों को हटा दिया गया है। दिए गए विकल्पों की सहायता से रिक्त स्थानों की पूर्ति कीजिए। प्रत्येक संख्या के लिए सबसे उपयुक्त विकल्प का चयन कीजिए।

महिलाएं 1. \_\_\_\_\_ की भांति शिक्षित हो रही हैं और 2. \_\_\_\_\_ में कार्य भी कर रही हैं। जीवन के तकरीबन हर क्षेत्र में चाहे वह 3. \_\_\_\_\_ हो या सामाजिक, सरकारी हो या गैर-सरकारी नौकरी, नारी हर जगह अपने 4. \_\_\_\_\_ बढ़ा चुकी है। नारी को स्वावलम्बी और 5. \_\_\_\_\_ बनने के लिए नौकरी का सहारा लेना पड़ा। इससे उनका आत्मविश्वास बढ़ता है। वह अपनी नौकरी भी पूरी जिम्मेदारी के साथ निभाती है।

**SubQuestion No : 18**

Q.18 रिक्त स्थान 3 की पूर्ति के लिए सबसे उपयुक्त विकल्प का चयन करें।

- Ans
- 1. पर्यटन
  - 2. स्कूलों
  - 3. व्यवसायों
  - 4. राजनीतिक

Question ID : 264330110935  
Status : Not Answered  
Chosen Option : --

**Comprehension:**

निम्नलिखित गद्यांश में कुछ शब्दों को हटा दिया गया है। दिए गए विकल्पों की सहायता से रिक्त स्थानों की पूर्ति कीजिए। प्रत्येक संख्या के लिए सबसे उपयुक्त विकल्प का चयन कीजिए।

महिलाएं 1. \_\_\_\_\_ की भांति शिक्षित हो रही हैं और 2. \_\_\_\_\_ में कार्य भी कर रही हैं। जीवन के तकरीबन हर क्षेत्र में चाहे वह 3. \_\_\_\_\_ हो या सामाजिक, सरकारी हो या गैर-सरकारी नौकरी, नारी हर जगह अपने 4. \_\_\_\_\_ बढ़ा चुकी है। नारी को स्वावलम्बी और 5. \_\_\_\_\_ बनने के लिए नौकरी का सहारा लेना पड़ा। इससे उनका आत्मविश्वास बढ़ता है। वह अपनी नौकरी भी पूरी जिम्मेदारी के साथ निभाती है।

**SubQuestion No : 19**

Q.19 रिक्त स्थान 4 की पूर्ति के लिए सबसे उपयुक्त विकल्प का चयन करें।

- Ans
- 1. हाथ
  - 2. दायरा
  - 3. कदम
  - 4. फासले

Question ID : 264330110936  
Status : Not Answered  
Chosen Option : --

**Comprehension:**

निम्नलिखित गद्यांश में कुछ शब्दों को हटा दिया गया है। दिए गए विकल्पों की सहायता से रिक्त स्थानों की पूर्ति कीजिए। प्रत्येक संख्या के लिए सबसे उपयुक्त विकल्प का चयन कीजिए।

महिलाएं 1. \_\_\_\_\_ की भांति शिक्षित हो रही हैं और 2. \_\_\_\_\_ में कार्य भी कर रही हैं। जीवन के तकरीबन हर क्षेत्र में चाहे वह 3. \_\_\_\_\_ हो या सामाजिक, सरकारी हो या गैर-सरकारी नौकरी, नारी हर जगह अपने 4. \_\_\_\_\_ बढ़ा चुकी है। नारी को स्वावलम्बी और 5. \_\_\_\_\_ बनने के लिए नौकरी का सहारा लेना पड़ा। इससे उनका आत्मविश्वास बढ़ता है। वह अपनी नौकरी भी पूरी जिम्मेदारी के साथ निभाती है।

**SubQuestion No : 20**

Q.20 रिक्त स्थान 5 की पूर्ति के लिए सबसे उपयुक्त विकल्प का चयन करें।

- Ans
- 1. आत्मनिर्भर
  - 2. पराधीन
  - 3. आश्रित
  - 4. निराश्रय

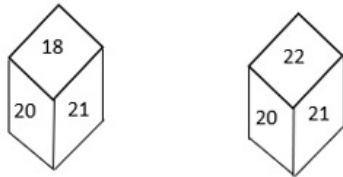
Question ID : 264330110937  
Status : Not Answered  
Chosen Option : --

## Constable GD in CAPFs SSF Rifleman GD in Assam Rifles and Sepoy in NCB Examination 2022

Roll Number	@Qmaths Telegram Channel
Candidate Name	@Qmaths Telegram Channel
Venue Name	ION Digital Zone iDZ Kishanpur
Exam Date	24/01/2023
Exam Time	2:30 PM - 3:30 PM
Subject	Constable GD Examination 2022

### Section : Part-A-General Intelligence and Reasoning

Q.1 Two different positions of the same dice are shown. Find the number on the face opposite the face showing '18'.



- Ans  1. 22  
 2. 19  
 3. 20  
 4. 24

Question ID : 26433089509  
Status : Answered  
Chosen Option : 1

Q.2 Which letter-cluster will replace the question mark (?) to complete the given series?  
MRFL, RYKS, ?, BMUG, GTZN

- Ans  1. TFQY  
 2. TDOX  
 3. WFPZ  
 4. SEPY

Question ID : 26433068034  
Status : Answered  
Chosen Option : 3

Q.3 Which number will replace the question mark (?) in the following series?  
2, 10, 30, ?, 130

- Ans  1. 50  
 2. 100  
 3. 68  
 4. 64

Question ID : 26433067836  
Status : Not Answered  
Chosen Option : --

Q.4 Which letter-cluster will replace the question mark (?) to complete the given series?  
YWUS, RPNL, ?, DBZX, WUSQ

- Ans  1. KIGE  
 2. KJHF  
 3. KIHE  
 4. KJGE

Question ID : 26433067723  
Status : Answered  
Chosen Option : 1

Q.5 Which option represents the correct order of the given words as they would appear in the English dictionary?

- 1 grape  
2 grown  
3 grass  
4 gross  
5 grind

- Ans  1. 1,4,3,5,2  
 2. 1,3,5,4,2  
 3. 1,5,4,3,2  
 4. 1,3,5,2,4

Question ID : 26433069295  
Status : Answered  
Chosen Option : 2

Q.6 उस विकल्प का चयन कीजिए जो तीसरे शब्द से उसी प्रकार संबंधित है जिस प्रकार दूसरा शब्द पहले शब्द से संबंधित है। (शब्दों को अर्थपूर्ण शब्दों के रूप में मानना है और उन्हें शब्द में अक्षरों/व्यंजनों/स्वरों की संख्या के आधार पर एक-दूसरे से संबंधित नहीं करना है।)  
ऊन : स्वेटर :: लैटेक्स : ?

- Ans  1. मोम  
 2. धातु  
 3. रबड़  
 4. आभूषण

Question ID : 26433069576  
Status : Answered  
Chosen Option : 1

Q.7 Which two numbers, from the given options, should be interchanged to make the given equation correct?

$$95 \div 19 \times 112 \div (4 \times 4 + 3) + 5 = 24$$

- Ans  1. 112 and 95  
 2. 4 and 5  
 3. 4 and 3  
 4. 112 and 24

Question ID : 26433082485  
Status : Answered  
Chosen Option : 2

Q.8 Select the option that is related to the fourth term in the same way as the first term is related to the second term and the fifth term is related to the sixth term.  
80 : 17 :: ? : 13 :: 185 : 38

- Ans
- 1. 85
  - 2. 60
  - 3. 65
  - 4. 70

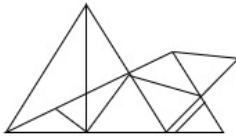
Question ID : 26433074552  
Status : Answered  
Chosen Option : 2

Q.9 'A + B' means 'B is the mother of A'  
'A # B' means 'B is the sister of A'  
'A @ B' means 'B is the brother of A'  
'A % B' means 'B is the daughter of A'  
If A # B @ C % D + E, then how is E related to A?

- Ans
- 1. Wife
  - 2. Sister
  - 3. Brother's wife
  - 4. Brother's daughter

Question ID : 26433068527  
Status : Answered  
Chosen Option : 3

Q.10 Select the option figure which is embedded in the given figure. (Rotation is NOT allowed)



Ans

- 1.
- 2.
- 3.
- 4.

Question ID : 26433069329  
Status : Answered  
Chosen Option : 1

**Q.11** If signs '+' and '-' and numbers 14 and 6 are used interchangeably, then which of the following equation would be correct?

- Ans  1.  $8 \times 2 + 6 - 14 = 4$   
 2.  $6 + 14 \times 2 - 18 = 20$   
 3.  $18 - 6 + 3 \times 14 = 30$   
 4.  $6 \times 8 + 12 - 14 = 20$

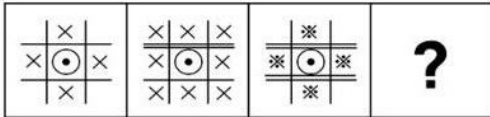
Question ID : 264330117487  
 Status : Answered  
 Chosen Option : 2

**Q.12** Which of the following numbers will replace the question mark (?) in the given series?  
 109, 122, 148, ?, 239, 304

- Ans  1. 179  
 2. 189  
 3. 198  
 4. 187

Question ID : 26433076745  
 Status : Answered  
 Chosen Option : 4

**Q.13** Select the figure that will come at the place of question mark (?) in the following figure.



- Ans
- 1.
  - 2.
  - 3.
  - 4.

Question ID : 26433078862  
 Status : Answered  
 Chosen Option : 4



Q.14 Seven people P,Q,R,S,T,U and V are sitting in a straight line adjacent to each other, facing the north (not necessarily in the given order). R is sitting to the immediate right of U. U is sitting third to the right of P. There are only four persons sitting between P and T. Q is the immediate neighbour of V and U. Who can be the immediate neighbour of S?

- Ans
- 1. Q
  - 2. U
  - 3. T
  - 4. R

Question ID : 26433080704  
Status : Answered  
Chosen Option : 3

Q.15 In a certain code language, 'MOBILE' is coded as '18' and 'TELEVISION' is coded as 30. How will 'COMPUTER' be coded in that language?

- Ans
- 1. 20
  - 2. 22
  - 3. 24
  - 4. 23

Question ID : 26433080470  
Status : Answered  
Chosen Option : 3

Q.16 In a certain code language, 'GATE' is written as 'TZGV' and 'PASS' is written as 'KZHH'. How will 'HOME' be written in that language?

- Ans
- 1. SLNV
  - 2. SNVL
  - 3. VNLS
  - 4. SNLV

Question ID : 26433070329  
Status : Answered  
Chosen Option : 1

Q.17 Three statements are given, followed by three conclusions numbered I, II and III. Assuming the statements to be true, even if they seem to be at variance with commonly known facts, decide which of the conclusions logically follow(s) from the statements.

Statements:

Some beans are potatoes.

All carrots are potatoes.

All gourds are potatoes.

Conclusions:

I. Some gourds are beans.

II. Some carrots are gourds.

III. Some potatoes are gourds.

- Ans
- 1. Only conclusions I and III follow
  - 2. Only conclusion III follows
  - 3. All conclusions follow
  - 4. Only conclusions II and III follow

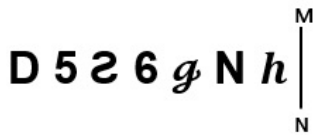
Question ID : 26433091001  
Status : Answered  
Chosen Option : 2

**Q.18** Seven girls Rita, Sita, Gita, Mita, Anita, Binita, and Sunita are sitting around a circular table facing the centre. Rita and Gita are not sitting next to each other. Sunita is sitting between Binita and Mita. Mita is sitting to the immediate left of Rita. Sita is sitting between Anita and Gita. Who is sitting to the immediate left of Anita?

- Ans
- 1. Sunita
  - 2. Sita
  - 3. Binita
  - 4. Rita

Question ID : 264330114204  
 Status : Answered  
 Chosen Option : 4

**Q.19** Select the correct mirror image of the given figure, when the mirror is placed at MN as shown below.



- Ans
- 1. *h N g 6 2 5 D*
  - 2. *h N g 2 5 D*
  - 3. *h N g 2 5 D*
  - 4. *h N g 2 5 D*

Question ID : 26433090149  
 Status : Answered  
 Chosen Option : 2

**Q.20** Select the option that is related to the third word in the same way as the second word is related to the first word.  
 (The words must be considered as meaningful English words and must not be related to each other based on the number of letters/ number of consonants / vowels in the word)

Binocular : View :: Spanner : ?

- Ans
- 1. Feed
  - 2. Grip
  - 3. Amplify
  - 4. Scoop

Question ID : 26433068055  
 Status : Answered  
 Chosen Option : 3

Section : Part-B-General Knowledge and General awareness

**Q.1** The term 'Shido' is used in Judo for \_\_\_\_\_.

- Ans
- 1. minor penalty
  - 2. throwing skill
  - 3. defensive skill
  - 4. points

Question ID : 26433092334  
 Status : Not Answered  
 Chosen Option : --

**Q.2 Who resigned as Chief minister of Maharashtra following Supreme Court of India not admitting the stay petition of Shiv Sena against the Motion of no confidence in June 2022?**

- Ans**  1. Uddhav Thackeray  
 2. Devendra Fadnavis  
 3. Eknath Shinde  
 4. Urmila Matondkar

Question ID : 264330114926  
Status : Answered  
Chosen Option : 1

**Q.3 \_\_\_\_\_ is an indication of the total borrowings needed by the government.**

- Ans**  1. fiscal growth  
 2. fiscal deficit  
 3. fiscal balance  
 4. fiscal surplus

Question ID : 264330115390  
Status : Answered  
Chosen Option : 2

**Q.4 Budget is a statement of estimated receipts and expenditures of the government in respect of every \_\_\_\_\_.**

- Ans**  1. calendar year  
 2. capital year  
 3. financial year  
 4. previous year

Question ID : 264330115274  
Status : Answered  
Chosen Option : 1

**Q.5 Shri Bhagwant Mann became the Chief Minister of \_\_\_\_\_ state/union territory of India in March 2022.**

- Ans**  1. Uttarakhand  
 2. Delhi  
 3. Punjab  
 4. Haryana

Question ID : 264330114890  
Status : Answered  
Chosen Option : 3

**Q.6 सुजाता महापात्रा ने \_\_\_\_\_ के लिए संगीत नाटक अकादमी पुरस्कार जीता है।**

- Ans**  1. ओडिसी  
 2. कथक  
 3. फ्यूजन डांस  
 4. आधुनिक नृत्य

Question ID : 264330115896  
Status : Answered  
Chosen Option : 1

Q.7 Who was elected as the first woman speaker of Uttarakhand Legislative Assembly in March 2022?

- Ans  1. Ritu Khanduri  
 2. Madhabi Puri Buch  
 3. Abhilasha Barak  
 4. Santishree Pandit

Question ID : 264330114977  
Status : Answered  
Chosen Option : 1

Q.8 Articles \_\_\_\_\_ in Part VI of the Constitution deals with the organisation, composition, duration, officers, procedures, privileges, powers and so on of the state legislature.

- Ans  1. 158 to 200  
 2. 168 to 212  
 3. 150 to 168  
 4. 150 to 212

Question ID : 26433089917  
Status : Not Answered  
Chosen Option : --

Q.9 निम्नलिखित में से किस कारण से खेती की 'काटो और जलाओ (slash and burn)' विधि अपनाई जाती है?

- Ans  1. क्षेत्र को जल्दी से खाली करने के लिए  
 2. मिट्टी की उर्वरता को कम करने के लिए  
 3. मिट्टी की उर्वरता को पुनःपूर्ति करने के लिए  
 4. प्रदूषण उत्पन्न करने के लिए

Question ID : 264330115521  
Status : Answered  
Chosen Option : 1

Q.10 Mohiniyattam dance is performed by women in honour of the Hindu god \_\_\_\_\_ in his incarnation as the enchantress Mohini.

- Ans  1. Rama  
 2. Vishnu  
 3. Shiva  
 4. Krishna

Question ID : 264330115060  
Status : Answered  
Chosen Option : 2

Q.11 भारत में मेघालय राज्य के निम्नलिखित में से किस शहर में सबसे अधिक वर्षा होती है?

- Ans  1. शिलांग  
 2. मौसिनराम  
 3. जोवाई  
 4. बाघमारा

Question ID : 264330115976  
Status : Answered  
Chosen Option : 3

Q.12 Aryabhata was India's first artificial satellite in space, launched in the year \_\_\_\_\_.

- Ans
- 1. 1925
  - 2. 1990
  - 3. 1975
  - 4. 1945

Question ID : 264330115683  
Status : Answered  
Chosen Option : 2

Q.13 The first layer of earth's atmosphere is \_\_\_\_\_.

- Ans
- 1. Troposphere
  - 2. Stratosphere
  - 3. Thermosphere
  - 4. Mesosphere

Question ID : 264330116094  
Status : Answered  
Chosen Option : 1

Q.14 Ganesh Chaturthi, celebrated in the honour of God Ganesh, is observed in the Hindu month of \_\_\_\_\_.

- Ans
- 1. Chaitra
  - 2. Phalguna
  - 3. Bhadrapada
  - 4. Kartika

Question ID : 264330115102  
Status : Not Answered  
Chosen Option : --

Q.15 The rate at which the Reserve Bank is ready to buy or rediscount bills of exchange or other commercial papers is called the \_\_\_\_\_.

- Ans
- 1. Bank Rate
  - 2. Cash Reserve Ratio
  - 3. Reverse Repo Rate
  - 4. Repo Rate

Question ID : 26433054805  
Status : Answered  
Chosen Option : 3

Q.16  $\text{NH}_4\text{Cl}$  is the chemical formula for which of the following elements?

- Ans
- 1. Silicon Dioxide
  - 2. Potassium Nitrate
  - 3. Carbonyl Dichloride
  - 4. Ammonium Chloride

Question ID : 264330115161  
Status : Answered  
Chosen Option : 4

Q.17 Which of the following city hosted the 2022 Commonwealth games?

- Ans  1. Glasgow  
 2. Delhi  
 3. Gold Coast  
 4. Birmingham

Question ID : 264330115921  
Status : Answered  
Chosen Option : 4

Q.18 निम्नलिखित का मिलान करें:

- a) कच्चे माल को तैयार उत्पादों में बदलना i) खाद्य विज्ञान  
b) भोजन का अध्ययन ii) खाद्य संसाधन  
c) खाद्य उत्पादों का बड़े पैमाने पर उत्पादन iii) खाद्य प्रौद्योगिकी  
d) खाद्य स्थिरता को बढ़ावा देता है iv) खाद्य निर्माण

- Ans  1. a-iii, b-i, c-ii, d-iv  
 2. a-i, b-ii, c-iii, d-iv  
 3. a-ii, b-i, c-iv, d-iii  
 4. a-iv, b-iii, c-ii, d-i

Question ID : 264330115267  
Status : Answered  
Chosen Option : 1

Q.19 How many Schedules are there in the Constitution of India?

- Ans  1. 12  
 2. 10  
 3. 11  
 4. 9

Question ID : 264330115609  
Status : Answered  
Chosen Option : 1

Q.20 The Moth ki Masjid was built in the reign of \_\_\_\_\_ ruler.

- Ans  1. Firuz Shah Tugluq  
 2. Sikandar Lodi  
 3. Muhammad Tughluq  
 4. Bahlul Lodi

Question ID : 26433089856  
Status : Not Answered  
Chosen Option : --

Section : Part-C-Elementary Mathematics

Q.1 In a school, there are 200 students. If the ratio of the number of boys and the number of girls is 9 : 1, then find the mean proportion between the number of boys and that of girls in the school.

- Ans  1. 60  
 2. 30  
 3. 40  
 4. 50

Question ID : 26433075192  
Status : Answered  
Chosen Option : 1

**Q.2** Which number should be subtracted from 17, 30, 22 and 40 so that the obtained numbers may become proportional?

- Ans
- 1. 2
  - 2. 4
  - 3. 5
  - 4. 3

Question ID : 26433073087  
Status : Answered  
Chosen Option : 2

**Q.3** A man purchased two items at the same price and sold one at a profit of 15% and the other at a loss of 5%. If the difference between the two selling prices is ₹80, then what is the cost price of one item?

- Ans
- 1. ₹400
  - 2. ₹500
  - 3. ₹300
  - 4. ₹600

Question ID : 26433080106  
Status : Answered  
Chosen Option : 1

**Q.4** A company offers different types of discounts schemes.

- (i) Two successive discounts of 10% and 20%
- (ii) Buy 1 get 1 free
- (iii) Buy 5 get 3 free
- (iv) Buy 5 get 6

Which scheme has the minimum discount percentage?

- Ans
- 1. (iv)
  - 2. (iii)
  - 3. (i)
  - 4. (ii)

Question ID : 26433087365  
Status : Answered  
Chosen Option : 3

**Q.5** A thief noticing a policeman from a distance of 500 metres starts running at a speed of 8 km/h. The policeman chased him with a speed of 11 km/h. What is the distance run by the thief before he was caught? (Rounded off to two decimal places, if required)

- Ans
- 1. 1,333.33 metres
  - 2. 1,666.67 metres
  - 3. 4,000 metres
  - 4. 2,922 metres

Question ID : 26433080049  
Status : Answered  
Chosen Option : 1

**Q.6** A person buys the stock of a company at Rs.12,000. If he sells that stock (a year later) he gets Rs.15,000. Determine the percentage profit earned.

- Ans**
- 1. 25%
  - 2. 35%
  - 3. 30%
  - 4. 40%

Question ID : 26433071307  
Status : Answered  
Chosen Option : 1

**Q.7** The curved surface area of a right circular cylinder is  $90.2 \text{ m}^2$ , and its radius is 70 cm, find its height (in m).

Take  $\pi = \frac{22}{7}$

- Ans**
- 1. 24.5 m
  - 2. 21 m
  - 3. 20.5 m
  - 4. 23 m

Question ID : 26433076256  
Status : Not Answered  
Chosen Option : --

**Q.8** Find the sum which becomes ₹1,166.40 after 2 years at the rate of 8% per annum on compound interest, compounding annually.

- Ans**
- 1. ₹1,100
  - 2. ₹1,150
  - 3. ₹1,000
  - 4. ₹900

Question ID : 26433087380  
Status : Answered  
Chosen Option : 3

**Q.9** The area of the base of a right circular cone is  $154 \text{ cm}^2$  and its height is 24 cm. The curved surface area of the cone is: (Use  $\pi = \frac{22}{7}$ )

- Ans**
- 1.  $460 \text{ cm}^2$
  - 2.  $550 \text{ cm}^2$
  - 3.  $520 \text{ cm}^2$
  - 4.  $480 \text{ cm}^2$

Question ID : 26433075483  
Status : Answered  
Chosen Option : 2



Q.10 A park had an average of 30 children playing on weekdays and an average of 60 children playing on weekends. Find the average number of children playing per day in the park for the month of June beginning with a Saturday.

- Ans
- 1. 1.45
  - 2. 60
  - 3. 40
  - 4. 30

Question ID : 264330116681  
Status : Not Answered  
Chosen Option : --

Q.11 The population of a town 3 years ago was 84000. Due to migration to cities, it decreases every year at the rate of 10 percent. The present population of the town is :

- Ans
- 1. 51563
  - 2. 61236
  - 3. 41526
  - 4. 63526

Question ID : 26433079881  
Status : Answered  
Chosen Option : 2

Q.12 The average income of 74 persons is Rs.5,200 and that of a manager is Rs.6,000. Then the average income of the whole group is (consider up to two decimals):

- Ans
- 1. Rs. 5,210.66
  - 2. Rs. 6,200.16
  - 3. Rs. 5,360.86
  - 4. Rs. 5,510.66

Question ID : 26433081008  
Status : Answered  
Chosen Option : 1

Q.13 The least value of 'a' for which the number 638a435 is completely divisible by 3 is:

- Ans
- 1. 2
  - 2. 3
  - 3. 4
  - 4. 1

Question ID : 26433075874  
Status : Answered  
Chosen Option : 4

Q.14 If 18 percent of A is equal to 40 percent of B, then what is the ratio of A : B?

- Ans
- 1. 10 : 9
  - 2. 20 : 9
  - 3. 9 : 11
  - 4. 11 : 9

Question ID : 26433079855  
Status : Answered  
Chosen Option : 2

Q.15 The shopkeeper gave 50 percent discount on marked price of Rs.750. What will be the selling price ?

- Ans
- 1. Rs. 657
  - 2. Rs. 370
  - 3. Rs. 375
  - 4. Rs. 250

Question ID : 264330116713  
Status : Answered  
Chosen Option : 3

Q.16 In an exam, a student scored 40% on the first paper out of a total of 200. How much percentage should the student score in the second paper out of 200 if he has to get 60% marks overall?

- Ans
- 1. 60%
  - 2. 85%
  - 3. 75%
  - 4. 80%

Question ID : 26433087349  
Status : Answered  
Chosen Option : 4

Q.17 A and B can finish a work in 15 days and 10 days, respectively. A started the work alone and after 5 days, B joined A in the work. They both did the remaining work. What is the total number of days to complete the work?

- Ans
- 1.  $10\frac{1}{3}$  days
  - 2. 9 days
  - 3.  $9\frac{2}{3}$  days
  - 4.  $9\frac{1}{3}$  days

Question ID : 26433087392  
Status : Answered  
Chosen Option : 2

Q.18 If Ramesh walks at a speed of 15 km/h, instead of 12 km/h, he would have walked 2 km more in the same time. What is the actual distance (in km) travelled by Ramesh at 12 km/h in the same time?

- Ans
- 1. 8
  - 2. 10
  - 3. 6
  - 4. 9

Question ID : 26433064996  
Status : Answered  
Chosen Option : 1

Q.19 Work done by two men is equal to work done by three women, and work done by five women is equal to work done by seven boys. If 16 men can finish a work in 2 days, then in how many days the work will be completed by two boys?

- Ans  1. 33.6  
 2. 28.3  
 3. 23.8  
 4. 36.3

Question ID : 26433066179  
Status : Answered  
Chosen Option : 1

Q.20 The smallest number exactly divisible by 104, 78 and 260 is P. If  $P + 40 = Q^2$ , then what is the positive value of Q?

- Ans  1. 40  
 2. 39  
 3. 26  
 4. 80

Question ID : 264330116643  
Status : Answered  
Chosen Option : 1

Section : Part-D-English

Q.1 Select the most appropriate synonym for the underlined word in the given sentence.

The officer was not aware of the sedulous espionage.

- Ans  1. diligent  
 2. dangerous  
 3. sedate  
 4. seduce

Question ID : 26433072076  
Status : Answered  
Chosen Option : 2

Q.2 Select the most appropriate option to fill in the blank.

We may \_\_\_\_\_ an example or two.

- Ans  1. site  
 2. sight  
 3. cite  
 4. side

Question ID : 26433087944  
Status : Answered  
Chosen Option : 3

**Q.3** The following sentence has been split into four segments. Identify the segment that contains a grammatical error.

I have waiting / anxiously / for my / exam results.

- Ans**
- 1. exam results
  - 2. I have waiting
  - 3. anxiously
  - 4. for my

Question ID : 264330108882  
Status : Answered  
Chosen Option : 2

**Q.4** Select the most appropriate ANTONYM of the given word.

**Obedient**

- Ans**
- 1. Disobedient
  - 2. Docile
  - 3. Disciplined
  - 4. Meekness

Question ID : 26433072809  
Status : Answered  
Chosen Option : 1

**Q.5** Select the option that can be used as a one-word substitute for the given group of words.

The study of ancient writings and scriptures

- Ans**
- 1. Alchemy
  - 2. Geology
  - 3. Ornithology
  - 4. Palaeography

Question ID : 26433086314  
Status : Answered  
Chosen Option : 4

**Q.6** Select the correct idiom to substitute the underlined word segment in the following sentence.

When the teacher asked him about the homework, he started speaking vaguely to avoid talking about it .

- Ans**
- 1. beating around the bush
  - 2. searching around the room
  - 3. writing in the bush
  - 4. searching the bird in the bush

Question ID : 264330101447  
Status : Answered  
Chosen Option : 1

**Q.7** Select the MISSPELT word.

- Ans**
- 1. Attain
  - 2. Farnish
  - 3. Allergy
  - 4. Fabulous

Question ID : 26433086338  
Status : Answered  
Chosen Option : 2

**Q.8** Select the most appropriate synonym for the underlined word in the given sentence.

Wordsworth wished to work on his poems in solitude.

- Ans  1. seclusion  
 2. security  
 3. slumber  
 4. satiety

Question ID : 26433073749  
Status : Answered  
Chosen Option : 1

**Q.9** Select the most appropriate option that can substitute the underlined segment in the given sentence.

Rajiv helps his friends of solve real-life problems with several methods and approaches.

- Ans  1. helps his friends for solve  
 2. helps his friends in solve  
 3. help his friends of solve  
 4. helps his friends to solve

Question ID : 264330103766  
Status : Answered  
Chosen Option : 4

**Q.10** Select the most appropriate meaning of the underlined idiom in the given sentence.

The businessman agreed to grease the palm of the bank manager for a loan.

- Ans  1. To cooperate  
 2. To remind  
 3. To thank  
 4. To bribe

Question ID : 26433071994  
Status : Answered  
Chosen Option : 4

**Q.11** Select the most appropriate synonym of the underlined word.

Late morning, we took a stroll along the beach.

- Ans  1. scamper  
 2. Sprint  
 3. saunter  
 4. jog

Question ID : 26433088837  
Status : Answered  
Chosen Option : 4

**Q.12** Select the most appropriate option to fill in the blank.  
The doctor instructed the patient to \_\_\_\_\_ up and down his house as an exercise.

- Ans**  1. work  
 2. walk  
 3. chase  
 4. wake

Question ID : 26433085595  
Status : Answered  
Chosen Option : 2

**Q.13** Select the most appropriate option to fill in the blank.

It is surprising to see \_\_\_\_\_ (stale) apples available throughout the year.

- Ans**  1. old  
 2. musty  
 3. stuffy  
 4. fresh

Question ID : 26433060718  
Status : Answered  
Chosen Option : 4

**Q.14** Select the option in which all the words are spelt correctly.

- Ans**  1. My aunty arrivved at my home on the eve of Diwali.  
 2. My aunty arrived at my home on the eve of Diwali.  
 3. My aunty arived at my home on the eve of Diwali.  
 4. My aunty arrived at my home on the eve of Diwali.

Question ID : 26433072285  
Status : Answered  
Chosen Option : 2

**Q.15** Select the most appropriate ANTONYM of the word given in brackets to fill in the blank.

The curry was very \_\_\_\_\_ (distasteful). I ate it all.

- Ans**  1. refined  
 2. enchanting  
 3. intoxicating  
 4. delicious

Question ID : 26433070459  
Status : Answered  
Chosen Option : 4

**Comprehension:**

In the following passage, some words have been deleted. Read the passage carefully and select the most appropriate option to fill in each blank.

The set of relationships between people, (1) \_\_\_\_\_ their social position and roles, is referred to as society or human society. The people of a region, country, or even the (2) \_\_\_\_\_ world are referred to as a society. A society, as used in the sense of an organisation, is a group of people bound together by functional (3) \_\_\_\_\_, and may include qualities such as national or cultural identity, social solidarity, language or hierarchical organisation. Patterns of relationships between individuals who (4) \_\_\_\_\_ a common culture and institutions define human societies. A society, like other organisations or groups, permits its members to fulfil wants or wishes that they could not (5) \_\_\_\_\_ on their own.

**SubQuestion No : 16**

**Q.16 Select the most appropriate option to fill in blank number 1.**

- Ans**  1. including  
 2. discounting  
 3. developing  
 4. resisting

Question ID : 26433088515  
Status : Answered  
Chosen Option : 1

**Comprehension:**

In the following passage, some words have been deleted. Read the passage carefully and select the most appropriate option to fill in each blank.

The set of relationships between people, (1) \_\_\_\_\_ their social position and roles, is referred to as society or human society. The people of a region, country, or even the (2) \_\_\_\_\_ world are referred to as a society. A society, as used in the sense of an organisation, is a group of people bound together by functional (3) \_\_\_\_\_, and may include qualities such as national or cultural identity, social solidarity, language or hierarchical organisation. Patterns of relationships between individuals who (4) \_\_\_\_\_ a common culture and institutions define human societies. A society, like other organisations or groups, permits its members to fulfil wants or wishes that they could not (5) \_\_\_\_\_ on their own.

**SubQuestion No : 17**

**Q.17 Select the most appropriate option to fill in blank number 2.**

- Ans**  1. illiterate  
 2. primitive  
 3. absolute  
 4. entire

Question ID : 26433088516  
Status : Answered  
Chosen Option : 4

**Comprehension:**

In the following passage, some words have been deleted. Read the passage carefully and select the most appropriate option to fill in each blank.

The set of relationships between people, (1) \_\_\_\_\_ their social position and roles, is referred to as society or human society. The people of a region, country, or even the (2) \_\_\_\_\_ world are referred to as a society. A society, as used in the sense of an organisation, is a group of people bound together by functional (3) \_\_\_\_\_, and may include qualities such as national or cultural identity, social solidarity, language or hierarchical organisation. Patterns of relationships between individuals who (4) \_\_\_\_\_ a common culture and institutions define human societies. A society, like other organisations or groups, permits its members to fulfil wants or wishes that they could not (5) \_\_\_\_\_ on their own.

**SubQuestion No : 18**

**Q.18 Select the most appropriate option to fill in blank number 3.**

- Ans**
- 1. mutualism
  - 2. qualities
  - 3. interdependence
  - 4. exchange

Question ID : 26433088517  
Status : Answered  
Chosen Option : 1

**Comprehension:**

In the following passage, some words have been deleted. Read the passage carefully and select the most appropriate option to fill in each blank.

The set of relationships between people, (1) \_\_\_\_\_ their social position and roles, is referred to as society or human society. The people of a region, country, or even the (2) \_\_\_\_\_ world are referred to as a society. A society, as used in the sense of an organisation, is a group of people bound together by functional (3) \_\_\_\_\_, and may include qualities such as national or cultural identity, social solidarity, language or hierarchical organisation. Patterns of relationships between individuals who (4) \_\_\_\_\_ a common culture and institutions define human societies. A society, like other organisations or groups, permits its members to fulfil wants or wishes that they could not (5) \_\_\_\_\_ on their own.

**SubQuestion No : 19**

**Q.19 Select the most appropriate option to fill in blank number 4.**

- Ans**
- 1. share
  - 2. oppose
  - 3. protect
  - 4. divide

Question ID : 26433088518  
Status : Answered  
Chosen Option : 1



**Comprehension:**

In the following passage, some words have been deleted. Read the passage carefully and select the most appropriate option to fill in each blank.

The set of relationships between people, (1) \_\_\_\_\_ their social position and roles, is referred to as society or human society. The people of a region, country, or even the (2) \_\_\_\_\_ world are referred to as a society. A society, as used in the sense of an organisation, is a group of people bound together by functional (3) \_\_\_\_\_, and may include qualities such as national or cultural identity, social solidarity, language or hierarchical organisation. Patterns of relationships between individuals who (4) \_\_\_\_\_ a common culture and institutions define human societies. A society, like other organisations or groups, permits its members to fulfil wants or wishes that they could not (5) \_\_\_\_\_ on their own.

**SubQuestion No : 20**

**Q.20** Select the most appropriate option to fill in blank number 5.

Ans ✓ 1. accomplish

✗ 2. give up

✗ 3. escalate

✗ 4. evacuate

Question ID : 26433088519

Status : Answered

Chosen Option : 1

**Section : Part-D-Hindi**

**Q.1** "संजय भारतीय मूल्यों का तिरस्कार करता है।"

उक्त वाक्य में प्रयुक्त 'तिरस्कार' के स्थान पर उसके समानार्थी शब्द का प्रयोग निम्न में से किस वाक्य में किया गया है?

Ans ✗ 1. संजय भारतीय मूल्यों की सराहना करता है।

✗ 2. संजय भारतीय मूल्यों की प्रशंसा करता है।

✗ 3. संजय भारतीय मूल्यों को बदनाम करता है।

✓ 4. संजय भारतीय मूल्यों की उपेक्षा करता है।

Question ID : 26433085147

Status : Not Answered

Chosen Option : --

**Q.2** 'दुर्योधन ने कुचक्र रचकर पांडवों को चौसर में हरा दिया।'

निम्नलिखित में से कौन सा शब्द 'कुचक्र' का पर्यायवाची नहीं है?

Ans ✗ 1. साजिश

✓ 2. टोल

✗ 3. अभिसंधि

✗ 4. दुरभिसंधि

Question ID : 26433080922

Status : Not Answered

Chosen Option : --

**Q.3** निम्न में से कौन से वाक्य में कर्मकारक का गलत प्रयोग हुआ है?

Ans ✗ 1. रमेश ने गोपाल को मारा।

✓ 2. कविता पत्र को लिखती है।

✗ 3. लड़का कुत्ते को मारता है।

✗ 4. सीता ने चिट्ठी लिखी।

Question ID : 26433063033

Status : Not Answered

Chosen Option : --

Q.4 ' \_\_\_\_\_ लेने की फुरसत न होना।' उपरोक्त मुहावरे में रिक्त स्थान की पूर्ति उचित शब्द द्वारा कीजिए।

- Ans  1. सांस  
 2. मन  
 3. फूंक  
 4. खांसी

Question ID : 26433069692  
Status : Not Answered  
Chosen Option : --

Q.5 उन्होंने अपने बड़े बेटे को श्रद्धांजलि दे दी। उपरोक्त वाक्य में रेखांकित पद के स्थान पर सबसे उपयुक्त शब्द निम्न में से कौन सा होगा?

- Ans  1. पुष्पांजलि  
 2. गीतांजलि  
 3. अंजलि  
 4. तिलांजलि

Question ID : 26433079175  
Status : Not Answered  
Chosen Option : --

Q.6 देश की स्थिति अच्छा नहीं है।' इस वाक्य में कौन सा शब्द अशुद्ध है?

- Ans  1. नहीं  
 2. स्थिति  
 3. देश  
 4. अच्छा

Question ID : 26433066803  
Status : Not Answered  
Chosen Option : --

Q.7 'मेरे से कुछ ना पूछो।' इस वाक्य में रेखांकित वाक्य खंड के स्थान पर क्या आएगा?

- Ans  1. मेरे  
 2. मुझको  
 3. मुझसे  
 4. मैं

Question ID : 26433062198  
Status : Not Answered  
Chosen Option : --

Q.8 निम्नलिखित में से शुद्ध वाक्य कौन-सा है?

- Ans  1. वह आरोग्य हो गया।  
 2. एक-एक करके सभी के सभी मर गए।  
 3. चरखा कातनी चाहिए।  
 4. चरखा चलाना चाहिए।

Question ID : 26433085140  
Status : Not Answered  
Chosen Option : --

Q.9 निम्नलिखित मुहावरे के लिए उपयुक्त सार्थक शब्द क्या होगा?  
चादर तान कर सोना

- Ans
- 1. शोक मनाना
  - 2. बढ़िया आचरण करना
  - 3. निश्चित हो जाना
  - 4. किसी की निंदा करना

Question ID : 26433065766  
Status : Not Answered  
Chosen Option : --

Q.10 निम्नलिखित वाक्य में किस प्रकार की त्रुटि है?  
'इस प्रकार की निबंध में समाज का समग्र चित्र दिखाई देता है।'

- Ans
- 1. लिंग सम्बन्धी त्रुटि
  - 2. क्रिया सम्बन्धी त्रुटि
  - 3. अनुपयुक्त शब्द प्रयोग त्रुटि
  - 4. कारक सम्बन्धी त्रुटि

Question ID : 26433063023  
Status : Not Answered  
Chosen Option : --

Q.11 निम्नलिखित विकल्पों में से कौन सा एक वाक्य संयोजक क्रिया-विशेषण से सम्बन्ध रखता है?

- Ans
- 1. तुम किताब खोलकर पढ़ोगे।
  - 2. वह खाकर स्कूल गया।
  - 3. जब आप आज्ञा देंगे, तब मैं उठूँगा।
  - 4. मैं जाकर देखूँगा।

Question ID : 26433062959  
Status : Not Answered  
Chosen Option : --

Q.12 'अंक में स्थान पाया हुआ' वाक्यांश के लिए एक शब्द क्या होगा?

- Ans
- 1. अकिंचन
  - 2. अंकस्थ
  - 3. अंकुर
  - 4. अंडज

Question ID : 26433062157  
Status : Not Answered  
Chosen Option : --

Q.13 निम्न में से कौन-सा शब्द 'राजा' शब्द का पर्यायवाची शब्द नहीं है?

- Ans
- 1. महीप
  - 2. भूपति
  - 3. स्वर्गाधिपति
  - 4. नरपति

Question ID : 26433067078  
Status : Not Answered  
Chosen Option : --

Q.14 'आपके रहन-सहन का दर्जा ऊंचा है।' इस वाक्य में रेखांकित शब्द के स्थान पर उचित शब्द क्या होगा?

- Ans  1. तरीका  
 2. कुछ  
 3. भांति  
 4. स्तर

Question ID : 26433062783  
Status : Not Answered  
Chosen Option : --

Q.15 "उसके द्वारा किए गए अच्छे कार्यों के कारण वह समाज में \_\_\_\_\_ है।"  
उपरोक्त वाक्य में रिक्त स्थान पर निम्न में से किस शब्द का प्रयोग उपयुक्त होगा?

- Ans  1. बदनाम  
 2. कुख्यात  
 3. विख्यात  
 4. गुमनाम

Question ID : 26433067009  
Status : Not Answered  
Chosen Option : --

**Comprehension:**

निम्नलिखित गद्यांश में कुछ शब्दों को हटा दिया गया है। दिए गए विकल्पों की सहायता से रिक्त स्थानों की पूर्ति कीजिए। प्रत्येक संख्या के लिए सबसे उपयुक्त विकल्प का चयन कीजिए।  
मनुष्य सामाजिक प्राणी है, उसका निकटतम समाज 1. \_\_\_\_\_ ही है। इसी प्रकार हमारे 2. \_\_\_\_\_ के निकटतम राष्ट्र हमारे पड़ोसी ही कहलाएँगे। यह पड़ोसी ही हैं जो हमें सुख और 3. \_\_\_\_\_ से रहने देते हैं। इसी के साथ हम अपने पड़ोसियों के साथ जैसा 4. \_\_\_\_\_ करेंगे, वे भी हमारे साथ 5. \_\_\_\_\_ ही करेंगे।

SubQuestion No : 16

Q.16 रिक्त स्थान 1 की पूर्ति के लिए सबसे उपयुक्त विकल्प का चयन कीजिए।

- Ans  1. उच्च  
 2. हमही  
 3. पड़ोसी  
 4. संबंधी

Question ID : 264330111053  
Status : Not Answered  
Chosen Option : --

**Comprehension:**

निम्नलिखित गद्यांश में कुछ शब्दों को हटा दिया गया है। दिए गए विकल्पों की सहायता से रिक्त स्थानों की पूर्ति कीजिए। प्रत्येक संख्या के लिए सबसे उपयुक्त विकल्प का चयन कीजिए।  
मनुष्य सामाजिक प्राणी है, उसका निकटतम समाज 1. \_\_\_\_\_ ही है। इसी प्रकार हमारे 2. \_\_\_\_\_ के निकटतम राष्ट्र हमारे पड़ोसी ही कहलाएँगे। यह पड़ोसी ही हैं जो हमें सुख और 3. \_\_\_\_\_ से रहने देते हैं। इसी के साथ हम अपने पड़ोसियों के साथ जैसा 4. \_\_\_\_\_ करेंगे, वे भी हमारे साथ 5. \_\_\_\_\_ ही करेंगे।

SubQuestion No : 17

Q.17 रिक्त स्थान 2 की पूर्ति के लिए सबसे उपयुक्त विकल्प का चयन कीजिए।

- Ans  1. सहायक  
 2. राष्ट्र  
 3. मैत्री  
 4. व्यक्ति

Question ID : 264330111054  
Status : Not Answered  
Chosen Option : --

**Comprehension:**

निम्नलिखित गद्यांश में कुछ शब्दों को हटा दिया गया है। दिए गए विकल्पों की सहायता से रिक्त स्थानों की पूर्ति कीजिए। प्रत्येक संख्या के लिए सबसे उपयुक्त विकल्प का चयन कीजिए।  
मनुष्य सामाजिक प्राणी है, उसका निकटतम समाज 1. \_\_\_\_\_ ही है। इसी प्रकार हमारे 2. \_\_\_\_\_ के निकटतम राष्ट्र हमारे पड़ोसी ही कहलाएँगे। यह पड़ोसी ही हैं जो हमें सुख और 3. \_\_\_\_\_ से रहने देते हैं। इसी के साथ हम अपने पड़ोसियों के साथ जैसा 4. \_\_\_\_\_ करेंगे, वे भी हमारे साथ 5. \_\_\_\_\_ ही करेंगे।

**SubQuestion No : 18****Q.18 रिक्त स्थान 3 की पूर्ति के लिए सबसे उपयुक्त विकल्प का चयन कीजिए।**

- Ans  1. नींद  
 2. बातों  
 3. शांति  
 4. दुःख

Question ID : 264330111055  
Status : Not Answered  
Chosen Option : --

**Comprehension:**

निम्नलिखित गद्यांश में कुछ शब्दों को हटा दिया गया है। दिए गए विकल्पों की सहायता से रिक्त स्थानों की पूर्ति कीजिए। प्रत्येक संख्या के लिए सबसे उपयुक्त विकल्प का चयन कीजिए।  
मनुष्य सामाजिक प्राणी है, उसका निकटतम समाज 1. \_\_\_\_\_ ही है। इसी प्रकार हमारे 2. \_\_\_\_\_ के निकटतम राष्ट्र हमारे पड़ोसी ही कहलाएँगे। यह पड़ोसी ही हैं जो हमें सुख और 3. \_\_\_\_\_ से रहने देते हैं। इसी के साथ हम अपने पड़ोसियों के साथ जैसा 4. \_\_\_\_\_ करेंगे, वे भी हमारे साथ 5. \_\_\_\_\_ ही करेंगे।

**SubQuestion No : 19****Q.19 रिक्त स्थान 4 की पूर्ति के लिए सबसे उपयुक्त विकल्प का चयन कीजिए।**

- Ans  1. सत्कार  
 2. प्रतिकार  
 3. व्यवहार  
 4. उपकार

Question ID : 264330111056  
Status : Not Answered  
Chosen Option : --

**Comprehension:**

निम्नलिखित गद्यांश में कुछ शब्दों को हटा दिया गया है। दिए गए विकल्पों की सहायता से रिक्त स्थानों की पूर्ति कीजिए। प्रत्येक संख्या के लिए सबसे उपयुक्त विकल्प का चयन कीजिए।  
मनुष्य सामाजिक प्राणी है, उसका निकटतम समाज 1. \_\_\_\_\_ ही है। इसी प्रकार हमारे 2. \_\_\_\_\_ के निकटतम राष्ट्र हमारे पड़ोसी ही कहलाएँगे। यह पड़ोसी ही हैं जो हमें सुख और 3. \_\_\_\_\_ से रहने देते हैं। इसी के साथ हम अपने पड़ोसियों के साथ जैसा 4. \_\_\_\_\_ करेंगे, वे भी हमारे साथ 5. \_\_\_\_\_ ही करेंगे।

**SubQuestion No : 20****Q.20 रिक्त स्थान 5 की पूर्ति के लिए सबसे उपयुक्त विकल्प का चयन कीजिए।**

- Ans  1. जैसा  
 2. कैसा  
 3. वैसा  
 4. प्रेम

Question ID : 264330111057  
Status : Not Answered  
Chosen Option : --

## Constable GD in CAPFs SSF Rifleman GD in Assam Rifles and Sepoy in NCB Examination 2022

Roll Number	@Qmaths Telegram Channel
Candidate Name	@Qmaths Telegram Channel
Venue Name	ION Digital Zone iDZ Kuanwala
Exam Date	24/01/2023
Exam Time	5:15 PM - 6:15 PM
Subject	Constable GD Examination 2022

### Section : Part-A-General Intelligence and Reasoning

Q.1 In a code language, 'ECTOPIC' is written as '71' and 'EDIFY' is written as '49'. How will 'ECONOMY' be written in that language?

- Ans
- 1. 87
  - 2. 90
  - 3. 92
  - 4. 88

Question ID : 26433068935  
Status : Answered  
Chosen Option : 2

Q.2 Five people Q, R, S, T and U are sitting in a straight row, facing north. S is an immediate neighbour of both T and R. R is an immediate neighbour of Q. If Q is at the extreme right end of the row, then who is sitting at the extreme left end?

- Ans
- 1. U
  - 2. R
  - 3. T
  - 4. S

Question ID : 26433056046  
Status : Answered  
Chosen Option : 1

Q.3 In a certain code language, 'AGENT' is coded as ZHGOG and 'CHAIR' is coded as XICJI. How will 'FAITH' be coded in that language?

- Ans
- 1. UZRGs
  - 2. HCKVJ
  - 3. GCJVI
  - 4. UBKUS

Question ID : 26433074516  
Status : Answered  
Chosen Option : 4

Q.4 Select the option that is related to the fifth letter-cluster in the same way as the second letter-cluster is related to the first letter-cluster and the fourth letter-cluster is related to the third letter-cluster.

CAPABLE : PACELBA :: AUCTION : CUANOIT : CAREFUL : ?

- Ans
- 1. RACELUF
  - 2. RACLUFE
  - 3. EFULCAR
  - 4. LUFERAC

Question ID : 26433069631  
Status : Answered  
Chosen Option : 2

Q.5 'A + B' means 'B is the father of A'  
'A - B' means 'B is the mother of A'  
'A # B' means 'B is the sister of A'  
'A & B' means 'B is the wife of A'  
If A # B + C & D - E, then how is E related to A?

- Ans
- 1. Mother's mother
  - 2. Mother's sister
  - 3. Wife
  - 4. Mother

Question ID : 26433068533  
Status : Answered  
Chosen Option : 1

Q.6 Which option represents the correct order of the given words as they would appear in the English dictionary?

- 1 Distinct
- 2 Discipline
- 3 Different
- 4 Distinguish
- 5 Disregard

- Ans
- 1. 2,5,4,1,3
  - 2. 3,2,5,1,4
  - 3. 2,3,5,1,4
  - 4. 3,4,1,2,5

Question ID : 26433069265  
Status : Answered  
Chosen Option : 2

Q.7 Select the option that is related to the third term in the same way as the second term is related to the first term and the sixth term is related to the fifth term.

8 : 520 :: 9 : ? :: 10 : 1010

- Ans
- 1. 690
  - 2. 756
  - 3. 752
  - 4. 738

Question ID : 26433069086  
Status : Answered  
Chosen Option : 4

Q.8 Which of the two numbers (Not digits) should be interchanged in the below equation to make it mathematically correct?

$$42 \div 3 \times 6 + 9 - 7 = 23$$

- Ans
- 1. 7 and 9
  - 2. 3 and 7
  - 3. 6 and 7
  - 4. 3 and 6

Question ID : 264330114177  
Status : Answered  
Chosen Option : 4

Q.9 Three statements are given followed by three conclusions numbered I, II and III. Assuming the statements to be true, even if they seem to be at variance with commonly known facts, decide which of the conclusions logically follow(s) from the statements.

Statements:

- All tops are bottoms.
- All pullovers are bottoms.
- All bottoms are pants.

Conclusions:

- I. All pullovers are pants.
- II. All pants are tops.
- III. Some pants are pullovers.

- Ans
- 1. Only conclusions II and III follow
  - 2. All conclusions follow
  - 3. Only conclusions I and II follow
  - 4. Only conclusions I and III follow

Question ID : 26433082303  
Status : Answered  
Chosen Option : 4

Q.10 Select the correct mirror image of the given pattern when the mirror is placed at MN as shown.

WOnDEr7FUL

M

N

- Ans
- 1. MOnDEr7FUL
  - 2. WOnDEr7FUL
  - 3. JUF7r3DnOW
  - 4. WOnDEr7FUL

Question ID : 26433082900  
Status : Answered  
Chosen Option : 3



Q.11 Which letter-cluster will replace the question mark (?) to complete the given series?  
ZDFA, CIMJ, ?, ISAB, LXHK

- Ans
- 1. HNRT
  - 2. EKJN
  - 3. FNTS
  - 4. GLPP

Question ID : 26433068040  
Status : Answered  
Chosen Option : 3

Q.12 Select the option figure which is embedded in the given figure. (Rotation is NOT allowed)



Ans

- 1.
- 2.
- 3.
- 4.

Question ID : 26433069335  
Status : Answered  
Chosen Option : 4

Q.13 Select the option that is related to the fifth letter-cluster in the same way as the second letter-cluster is related to the first letter-cluster and the fourth letter-cluster is related to the third letter-cluster.

PLC : EOT :: DLG : IOH :: HCN : ?

- Ans
- 1. PEM
  - 2. PFL
  - 3. QGM
  - 4. QEL

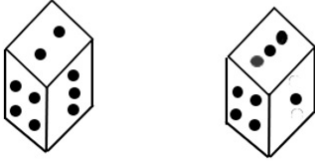
Question ID : 26433057887  
Status : Answered  
Chosen Option : 2

Q.14 Which number will replace the question mark (?) in the following series?  
4, 36, 144, ?, 900, 1764

- Ans
- 1. 400
  - 2. 200
  - 3. 500
  - 4. 300

Question ID : 26433067843  
Status : Answered  
Chosen Option : 1

Q.15 Two different positions of the same dice are shown having numbers 1 to 6 represented as dots. Find the number on the face opposite the face showing '2'.



- Ans
- 1. 3
  - 2. 1
  - 3. 5
  - 4. 4

Question ID : 26433085505  
Status : Answered  
Chosen Option : 1

Q.16 Which of the following numbers will replace the question mark (?) in the given series?  
13, 30, 47, ?, 81, 98, 115, 132

- Ans
- 1. 74
  - 2. 52
  - 3. 64
  - 4. 62

Question ID : 26433069043  
Status : Answered  
Chosen Option : 3

Q.17 Which of the following letter-clusters will replace the question mark (?) and complete the following letter-cluster series?  
EE, GF, JH, OK, VO, ?

- Ans
- 1. GT
  - 2. GS
  - 3. FU
  - 4. FT

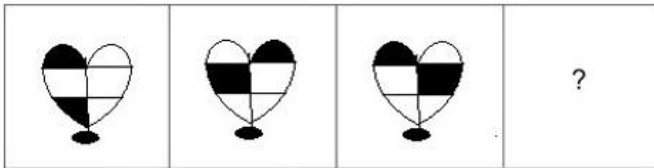
Question ID : 26433067279  
Status : Answered  
Chosen Option : 1

Q.18 Six students are sitting around a circular table facing the centre. Arun is the immediate neighbour of Krishna and Boby. Shama is the immediate neighbour of Ajay and Suman. Ajay is to the immediate left of Boby. Who is to the immediate right of Boby?

- Ans
- 1. Suman
  - 2. Krishna
  - 3. Shama
  - 4. Arun

Question ID : 26433069663  
Status : Answered  
Chosen Option : 4

Q.19 Select the figure that will replace the question mark (?) in the following figure series.



Ans

- 1.
- 2.
- 3.
- 4.

Question ID : 26433070422  
Status : Answered  
Chosen Option : 2

Q.20 If 'A' means 'subtraction', 'B' means 'division', 'C' means 'multiplication', and 'D' means 'addition', then what will be the value of following expression?  
28 A 80 B 16 C 5 D 21

- Ans  1. 24  
 2. 34  
 3. 14  
 4. 4

Question ID : 264330117493  
Status : Answered  
Chosen Option : 1

Section : Part-B-General Knowledge and General awareness

Q.1 In which among the following states did Priyanka Gandhi Vadra joined "Bharat Jodo Yatra" for first time in November 2022?

- Ans  1. Madhya Pradesh  
 2. Karnataka  
 3. Kerala  
 4. Uttar Pradesh

Question ID : 264330114896  
Status : Not Answered  
Chosen Option : --

Q.2 In India, \_\_\_\_\_ was the final approval authority for the five year plans.

- Ans  1. International Development Council  
 2. National Development Council  
 3. National Agriculture and Development Council  
 4. National Development Centre

Question ID : 264330115362  
Status : Answered  
Chosen Option : 2

Q.3 Which of the following monetary instruments of RBI is qualitative in nature?

- Ans  1. Moral Suasion  
 2. Cash Reserve ratio  
 3. Bank rate  
 4. Open Market Operations

Question ID : 26433054612  
Status : Answered  
Chosen Option : 2

Q.4 The Arjuna award started in which year?

- Ans  1. 1978  
 2. 1970  
 3. 1961  
 4. 1972

Question ID : 264330116267  
Status : Answered  
Chosen Option : 3

**Q.5** What is the phenomenon of heavy showers with thunder occurring in the West Bengal region during the hot weather season called?

- Ans**
- 1. Loo
  - 2. Kalbaisakhi
  - 3. Retreating monsoon
  - 4. Mango Showers

Question ID : 264330115982  
Status : Answered  
Chosen Option : 4

**Q.6** The Shumang Leela festival is associated with which of the following states?

- Ans**
- 1. Jharkhand
  - 2. Bihar
  - 3. Manipur
  - 4. Assam

Question ID : 264330115082  
Status : Not Answered  
Chosen Option : --

**Q.7** \_\_\_\_\_ Veda, shortest among the four Vedas, holds a divine status in Hindu tradition and is a collection of melodies and chants.

- Ans**
- 1. Atharva
  - 2. Yajur
  - 3. Rig
  - 4. Sama

Question ID : 264330115442  
Status : Answered  
Chosen Option : 1

**Q.8** Which state won the maximum number of bronze medals in the 36th edition of the National Games 2022 of India?

- Ans**
- 1. Maharashtra
  - 2. Uttar Pradesh
  - 3. Haryana
  - 4. Kerala

Question ID : 264330115911  
Status : Answered  
Chosen Option : 1

**Q.9** Only the \_\_\_\_\_ can make the proclamation of emergency in India.

- Ans**
- 1. Governor
  - 2. Chief Minister
  - 3. Prime Minister
  - 4. President

Question ID : 264330115615  
Status : Answered  
Chosen Option : 4

**Q.10** What is the name of the first woman inspector general to head the Rapid Action Force of the Central Reserve Police Force?

- Ans**  1. Annie Abraham  
 2. Seema Dhundiya  
 3. Sanjukta Parashar  
 4. Merin Joseph

Question ID : 264330114983  
Status : Answered  
Chosen Option : 1

**Q.11** In 1877, Viceroy Lytton organised a Durbar to acknowledge \_\_\_\_\_ as the Empress of India.

- Ans**  1. Queen Angelia  
 2. Queen Elizabeth  
 3. Queen Victoria  
 4. Queen Elizabeth II

Question ID : 264330115689  
Status : Answered  
Chosen Option : 2

**Q.12** What do you call organisms made of more than one cell?

- Ans**  1. subcellular  
 2. multicellular  
 3. unicellular  
 4. paracellular

Question ID : 264330115232  
Status : Not Answered  
Chosen Option : --

**Q.13** Which Part of the Constitution of India deals with the powers and functioning of the Supreme Court of India?

- Ans**  1. Part V  
 2. Part VI  
 3. Part X  
 4. Part XI

Question ID : 26433074908  
Status : Answered  
Chosen Option : 1

**Q.14** Bhami Kalapam is the classical dance-drama associated with which Indian classical dance form?

- Ans**  1. Sattriya  
 2. Kuchipudi  
 3. Mohiniyattam  
 4. Odissi

Question ID : 26433069903  
Status : Answered  
Chosen Option : 3

Q.15 Who received a gold medal for choreography for the Ballet Folklorico of Mexico?

- Ans
- 1. Jatin Goswami
  - 2. Alarmel Valli
  - 3. Amala Akkineni
  - 4. Mrinalini Sarabhai

Question ID : 264330115853  
Status : Not Answered  
Chosen Option : --

Q.16 \_\_\_\_\_ is a process in which two close-fitting parts are joined by using a filler material which is heated above its melting point and distributed in the gap by capillary action.

- Ans
- 1. Hardening
  - 2. Soldering
  - 3. Welding
  - 4. Brazing

Question ID : 264330115144  
Status : Answered  
Chosen Option : 3

Q.17 People of what age and above are included while calculating adult literacy rate?

- Ans
- 1. 18 years
  - 2. 15 years
  - 3. 14 years
  - 4. 12 years

Question ID : 264330116062  
Status : Answered  
Chosen Option : 3

Q.18 Which of the following is "NOT" a major wheat producing state?

- Ans
- 1. Goa
  - 2. Punjab
  - 3. Uttar Pradesh
  - 4. Haryana

Question ID : 264330115527  
Status : Answered  
Chosen Option : 1

Q.19 The Government's flagship programme 'Make in India' completed how many years on September 25, 2022?

- Ans
- 1. 5 years
  - 2. 9 years
  - 3. 4 years
  - 4. 8 years

Question ID : 264330116199  
Status : Answered  
Chosen Option : 4

**Q.20** Items such as cars, clothes, chocolates, which are directly sold to the consumers are :

- Ans**  1. private goods  
 2. expensive goods  
 3. public goods  
 4. capital goods

Question ID : 264330115280  
Status : Answered  
Chosen Option : 3

Section : Part-C-Elementary Mathematics

**Q.1** In an election between two candidates, the one who gets 75% of the votes is elected by a majority of 520 votes. What is the total number of votes polled?

- Ans**  1. 1040  
 2. 1604  
 3. 1314  
 4. 1212

Question ID : 26433080008  
Status : Answered  
Chosen Option : 1

**Q.2** Kiran lent Rs.5,00,000 to Kishore, which gets compounded annually at the rate of 12% per annum. Kishore lent the amount to Kavya on simple interest at the rate of 15% per annum. What is the difference in the interest earned by Kiran and Kishore after 3 years?

- Ans**  1. Rs.22,536  
 2. Rs.24,536  
 3. Rs.25,536  
 4. Rs.26,536

Question ID : 26433075323  
Status : Answered  
Chosen Option : 1

**Q.3** If Akash can do a piece of work in 63 days and Disha can do the same work in 84 days. They worked together for 12 days and after this Disha left the work and Akash completed the remaining work, then find the total number of days required to finish the work.

- Ans**  1. 40 days  
 2. 74 days  
 3. 54 days  
 4. 66 days

Question ID : 264330116883  
Status : Answered  
Chosen Option : 3



Q.4 X bought a dozen pencils for a total of Rs 60 and 20 pens for Rs 200. Find the total average cost of the stationery X bought.

- Ans
- 1. Rs 8.000
  - 2. Rs 8.125
  - 3. Rs 8.250
  - 4. Rs 8.375

Question ID : 264330116687  
Status : Answered  
Chosen Option : 2

Q.5 The marks obtained by seven students are 70, 85, 95, 86, 74, 83 and 67. What is the average marks obtained by them?

- Ans
- 1. 60
  - 2. 80
  - 3. 50
  - 4. 70

Question ID : 26433075136  
Status : Answered  
Chosen Option : 2

Q.6 Find the total surface area of a cylinder whose radius is 7 cm and curved surface area is  $3520 \text{ cm}^2$  (use  $\pi = \frac{22}{7}$ ).

- Ans
- 1.  $2838 \text{ cm}^2$
  - 2.  $3828 \text{ cm}^2$
  - 3.  $3850 \text{ cm}^2$
  - 4.  $3820 \text{ cm}^2$

Question ID : 26433083061  
Status : Answered  
Chosen Option : 2

Q.7 A shopkeeper gives a discount of 12% on the marked price of an item. If the selling price of item is Rs.13,200, then what is the marked price of the item?

- Ans
- 1. Rs.15,000
  - 2. Rs.20,000
  - 3. Rs.16,000
  - 4. Rs.12,000

Question ID : 26433061305  
Status : Answered  
Chosen Option : 1

Q.8 A shopkeeper marks his goods at 20% above the cost price, but to trick his customers, he offers a 10% discount on the marked price and also uses a faulty weight that weighs 800 g for 1 kg. Find his overall profit percentage.

- Ans
- 1. 37.5%
  - 2. 32%
  - 3. 27.5%
  - 4. 35%

Question ID : 26433076410  
Status : Answered  
Chosen Option : 3

Q.9 If  $N = (24^3 + 25^3 + 26^3 + 27^3)$ , then N divided by 102 leaves a remainder of:

- Ans
- 1. 12
  - 2. 1
  - 3. 0
  - 4. 18

Question ID : 26433081537  
Status : Not Answered  
Chosen Option : --

Q.10 Calculate the area of a rhombus with diagonals of 7 cm and 6 cm.

- Ans
- 1.  $18 \text{ cm}^2$
  - 2.  $28 \text{ cm}^2$
  - 3.  $21 \text{ cm}^2$
  - 4.  $24 \text{ cm}^2$

Question ID : 26433076333  
Status : Answered  
Chosen Option : 3

Q.11 Reeta goes to office from home at a speed of 40 km/h. If she return to home from office at a speed of 60 km/h, then what is her average speed?

- Ans
- 1. 44 km/h
  - 2. 52 km/h
  - 3. 48 km/h
  - 4. 50 km/h

Question ID : 26433075689  
Status : Answered  
Chosen Option : 3

Q.12 The marked price of an A.C. is ₹48,000. The shopkeeper allows a discount of 12% and gains 10%. If no discount is allowed, find his gain percentage.

- Ans
- 1. 20 Percent
  - 2. 26 Percent
  - 3. 24 Percent
  - 4. 25 Percent

Question ID : 26433080171  
Status : Answered  
Chosen Option : 1

Q.13 The speed of a boat in still water is 50 percent more than its speed in upstream. If the boat takes 20 minutes to reach point Q from point P in downstream, then how much time will it take to reach point P from point Q in upstream?

- Ans
- 1. 40 min
  - 2. 45 min
  - 3. 35 min
  - 4. 30 min

Question ID : 26433066178  
Status : Answered  
Chosen Option : 1

Q.14 Amrit is thrice as good a workman as Bhagat. Therefore Amrit is able to finish a piece of work in 50 days less than Bhagat. The time (in days) in which they can finish it working together is:

- Ans
- 1.  $19\frac{5}{4}$  days
  - 2.  $15\frac{3}{4}$  days
  - 3.  $18\frac{3}{4}$  days
  - 4.  $17\frac{4}{3}$  days

Question ID : 26433066321  
Status : Answered  
Chosen Option : 3

Q.15 If a natural number when divided by 4,5 and 6 leaves a remainder 3 in each case, then what is the smallest possible three digit natural number?

- Ans
- 1. 129
  - 2. 123
  - 3. 117
  - 4. 113

Question ID : 26433075635  
Status : Answered  
Chosen Option : 2

Q.16 A vendor sells 40 percent of oranges he had and throws away 10 percent of the remainder. Next day he sells 50 percent of the remaining and throws away the rest. What percent of his oranges does the vendor throw?

- Ans
- 1. 45 percent
  - 2. 60 percent
  - 3. 33 percent
  - 4. 27 percent

Question ID : 264330116803  
Status : Answered  
Chosen Option : 3

Q.17 Raju buys an old mobile for Rs.3,200 and spends Rs.800 on its repairs. If he sells the mobile for Rs.4,800, his gain per cent is:

- Ans
- 1. 30%
  - 2. 20%
  - 3. 25%
  - 4. 15%

Question ID : 26433074957  
Status : Answered  
Chosen Option : 2

Q.18 ₹1,900 is divided among 4 boys, 5 girls and 6 women, such that the shares of a boy, a girl and a woman are in the ratio 9 : 8 : 4. What is the share of a girl?

- Ans
- 1. ₹608
  - 2. ₹152
  - 3. ₹760
  - 4. ₹304

Question ID : 26433076186  
Status : Answered  
Chosen Option : 3

Q.19 If  $l:m=2:7$ ,  $m:n=3:4$  and  $n:k=14:5$ , then  $l:m:n:k$  is:

- Ans
- 1. 6:21:28:10
  - 2. 6:21:7:10
  - 3. 6:7:14:10
  - 4. 6:21:14:10

Question ID : 26433075731  
Status : Answered  
Chosen Option : 1

Q.20 A Bluetooth speaker is sold for ₹3,500 cash, or ₹1,000 cash down payment and the balance in 3 equal annual instalments. If rate of interest is 12.5% per annum and interest is compounding annually, then find the amount of instalment. (correct to 2 decimal places)

- Ans
- 1. ₹1,019.83
  - 2. ₹1,249.83
  - 3. ₹1,049.83
  - 4. ₹1,149.83

Question ID : 26433074937  
Status : Answered  
Chosen Option : 3

Section : Part-D-English

Q.1 Select the most appropriate ANTONYM of the given word.

Jovial

- Ans
- 1. Gloomy
  - 2. Abrupt
  - 3. Cheerful
  - 4. Nauseating

Question ID : 26433073802  
Status : Answered  
Chosen Option : 1

Q.2 Select the INCORRECTLY spelt word.

- Ans  1. Conscious  
 2. Credible  
 3. Cancellation  
 4. Convertible

Question ID : 26433074061  
Status : Answered  
Chosen Option : 3

Q.3 Select the most appropriate ANTONYM of the underlined word in the following sentence.

The accident made his face look horrible.

- Ans  1. Surgical  
 2. Pleasant  
 3. Ugly  
 4. Frightful

Question ID : 26433072241  
Status : Answered  
Chosen Option : 2

Q.4 Select the most appropriate option to fill in the blank.

Education, no doubt, \_\_\_\_\_ bring about the all-round development of a child.

- Ans  1. aims for  
 2. aim at  
 3. get rid at  
 4. aims to

Question ID : 26433072724  
Status : Answered  
Chosen Option : 4

Q.5 Select the most appropriate synonym of the given word.

Earned

- Ans  1. Offered  
 2. Gave  
 3. Gained  
 4. Accorded

Question ID : 26433088998  
Status : Answered  
Chosen Option : 3

Q.6 Select the most appropriate meaning of the given idiom.

Beside oneself

- Ans  1. To remain silent  
 2. Very shocked or distraught  
 3. Feeling overwhelming fear or worry  
 4. To be happy

Question ID : 26433072222  
Status : Answered  
Chosen Option : 1

**Q.7** Select the appropriate idiom that can replace the underlined phrase in the following sentence.

He is straightforward and honest and that's why everyone appreciates him.

- Ans
- 1. bad blood
  - 2. an open book
  - 3. an apple of one's eyes
  - 4. a big hit

Question ID : 26433072517  
Status : Answered  
Chosen Option : 2

**Q.8** Select the most appropriate synonym of the word given in brackets to fill in the blank.

Locating directions through the location of stars and constellations is a \_\_\_\_\_ (handy) way at the sea.

- Ans
- 1. near
  - 2. simple
  - 3. useful
  - 4. nice

Question ID : 26433061051  
Status : Answered  
Chosen Option : 3

**Q.9** Select the most appropriate option that can substitute the underlined segment in the given sentence. If there is no need to substitute it, select 'No substitution'.

You do not have access to this content currently.

- Ans
- 1. have permit
  - 2. No substitution
  - 3. have excess
  - 4. have permission

Question ID : 26433087893  
Status : Answered  
Chosen Option : 2

**Q.10** Select the most appropriate synonym of the given word.

Brave

- Ans
- 1. Cautious
  - 2. Timid
  - 3. Daring
  - 4. Mild

Question ID : 26433072531  
Status : Answered  
Chosen Option : 3

Q.11 Select the most appropriate option that can substitute the underlined segment in the given sentence.

Machines can only accomplish a maximum set of tasks, as machines do not hold any thought process of their own.

- Ans
- 1. accomplish a valued set of tasks
  - 2. accomplish a gist set of tasks
  - 3. accomplish a restricted set of tasks
  - 4. accomplish a difficult set of tasks

Question ID : 26433096158  
Status : Answered  
Chosen Option : 4

Q.12 Select the INCORRECTLY spelt word.

- Ans
- 1. Cherish
  - 2. Wisdom
  - 3. Calandar
  - 4. Mice

Question ID : 26433072760  
Status : Answered  
Chosen Option : 3

Q.13 The following sentence has been split into four segments. Identify the segment that contains a grammatical error.  
He said that / he had want / to read a / novel by Enid Blyton.

- Ans
- 1. he had want
  - 2. to read a
  - 3. novel by Enid Blyton
  - 4. He said that

Question ID : 26433086452  
Status : Answered  
Chosen Option : 1

Q.14 Select the most appropriate ANTONYM of the underlined word.

Many bosses at workplace consider their subordinate on equal planes.

- Ans
- 1. Inferior
  - 2. Superior
  - 3. Ordinary
  - 4. Mediocre

Question ID : 26433073195  
Status : Answered  
Chosen Option : 2

Q.15 Select the most appropriate ANTONYM of the underlined word.

The boy has benevolence towards animals.

- Ans
- 1. Hardness
  - 2. Pardon
  - 3. Cruelty
  - 4. Kindness

Question ID : 26433093495  
Status : Answered  
Chosen Option : 3

**Comprehension:**

In the following passage, some words have been deleted. Read the passage carefully and select the most appropriate option to fill in each blank.

Technological innovations have led to marked improvements in (1) \_\_\_\_\_, productivity, quality, inclusion and competitiveness in extension of financial services, especially in the area of digital lending. However, there have been (2) \_\_\_\_\_ consequences on account of greater reliance on third-party lending service providers mis-selling to the unsuspecting customers, concerns over (3) \_\_\_\_\_ of data privacy, unethical business conduct and illegitimate operations. While the current share of digital lending in overall credit pie of the financial sector is not significant for it to affect financial stability, the growth momentum has (4) \_\_\_\_\_ stability implications. The larger issue here is protecting the customers from widespread unethical practices and (5) \_\_\_\_\_ orderly growth.

**SubQuestion No : 16**

**Q.16 Select the most appropriate option to fill in blank number 1.**

- Ans**
- 1. adequacy
  - 2. inadequacy
  - 3. efficiency
  - 4. inefficiency

Question ID : 26433058872  
Status : Answered  
Chosen Option : 3

**Comprehension:**

In the following passage, some words have been deleted. Read the passage carefully and select the most appropriate option to fill in each blank.

Technological innovations have led to marked improvements in (1) \_\_\_\_\_, productivity, quality, inclusion and competitiveness in extension of financial services, especially in the area of digital lending. However, there have been (2) \_\_\_\_\_ consequences on account of greater reliance on third-party lending service providers mis-selling to the unsuspecting customers, concerns over (3) \_\_\_\_\_ of data privacy, unethical business conduct and illegitimate operations. While the current share of digital lending in overall credit pie of the financial sector is not significant for it to affect financial stability, the growth momentum has (4) \_\_\_\_\_ stability implications. The larger issue here is protecting the customers from widespread unethical practices and (5) \_\_\_\_\_ orderly growth.

**SubQuestion No : 17**

**Q.17 Select the most appropriate option to fill in blank number 2.**

- Ans**
- 1. intentional
  - 2. expected
  - 3. unintended
  - 4. planned

Question ID : 26433058873  
Status : Answered  
Chosen Option : 3



**Comprehension:**

In the following passage, some words have been deleted. Read the passage carefully and select the most appropriate option to fill in each blank.

Technological innovations have led to marked improvements in (1) \_\_\_\_\_, productivity, quality, inclusion and competitiveness in extension of financial services, especially in the area of digital lending. However, there have been (2) \_\_\_\_\_ consequences on account of greater reliance on third-party lending service providers mis-selling to the unsuspecting customers, concerns over (3) \_\_\_\_\_ of data privacy, unethical business conduct and illegitimate operations. While the current share of digital lending in overall credit pie of the financial sector is not significant for it to affect financial stability, the growth momentum has (4) \_\_\_\_\_ stability implications. The larger issue here is protecting the customers from widespread unethical practices and (5) \_\_\_\_\_ orderly growth.

**SubQuestion No : 18**

**Q.18 Select the most appropriate option to fill in blank number 3.**

**Ans**  1. agreement

2. closure

3. spread

4. breach

Question ID : 26433058874

Status : Answered

Chosen Option : 4

**Comprehension:**

In the following passage, some words have been deleted. Read the passage carefully and select the most appropriate option to fill in each blank.

Technological innovations have led to marked improvements in (1) \_\_\_\_\_, productivity, quality, inclusion and competitiveness in extension of financial services, especially in the area of digital lending. However, there have been (2) \_\_\_\_\_ consequences on account of greater reliance on third-party lending service providers mis-selling to the unsuspecting customers, concerns over (3) \_\_\_\_\_ of data privacy, unethical business conduct and illegitimate operations. While the current share of digital lending in overall credit pie of the financial sector is not significant for it to affect financial stability, the growth momentum has (4) \_\_\_\_\_ stability implications. The larger issue here is protecting the customers from widespread unethical practices and (5) \_\_\_\_\_ orderly growth.

**SubQuestion No : 19**

**Q.19 Select the most appropriate option to fill in blank number 4.**

**Ans**  1. optional

2. discretionary

3. compelling

4. insignificant

Question ID : 26433058875

Status : Answered

Chosen Option : 2

**Comprehension:**

In the following passage, some words have been deleted. Read the passage carefully and select the most appropriate option to fill in each blank.

Technological innovations have led to marked improvements in (1) \_\_\_\_\_, productivity, quality, inclusion and competitiveness in extension of financial services, especially in the area of digital lending. However, there have been (2) \_\_\_\_\_ consequences on account of greater reliance on third-party lending service providers mis-selling to the unsuspecting customers, concerns over (3) \_\_\_\_\_ of data privacy, unethical business conduct and illegitimate operations. While the current share of digital lending in overall credit pie of the financial sector is not significant for it to affect financial stability, the growth momentum has (4) \_\_\_\_\_ stability implications. The larger issue here is protecting the customers from widespread unethical practices and (5) \_\_\_\_\_ orderly growth.

**SubQuestion No : 20**

**Q.20** Select the most appropriate option to fill in blank number 5.

- Ans**  1. ensuring  
 2. invalidating  
 3. rejecting  
 4. repudiating

Question ID : 26433058876  
Status : Answered  
Chosen Option : 1

**Section : Part-D-Hindi**

**Q.1** संप्रदान कारक का बहुवचन रूप किस विकल्प में मौजूद है?

- Ans**  1. हमारे द्वारा  
 2. हममें  
 3. हमारे पर  
 4. हमारे लिए

Question ID : 26433063037  
Status : Not Answered  
Chosen Option : --

**Q.2** निम्न वाक्यांश के लिए सार्थक शब्द/सही विकल्प चुनें।  
जिसके हृदय में ममता नहीं है

- Ans**  1. निर्मम  
 2. निरंकुश  
 3. निर्दय  
 4. निर्वाचित

Question ID : 26433066924  
Status : Not Answered  
Chosen Option : --

**Q.3** 'ऊँची दुकान फीके पकवान' मुहावरे का सही अर्थ है-

- Ans**  1. बड़ा मकान होना  
 2. बड़ी इमारत में दुकान होना  
 3. खाने में स्वाद न होना  
 4. नाममात्र का बड़प्पन

Question ID : 26433062604  
Status : Not Answered  
Chosen Option : --

Q.4 'वह जो पढ़ता हो' वाक्यांश के लिए सार्थक शब्द है-

- Ans
- 1. साक्षर
  - 2. पढ़ाकू
  - 3. पाठक
  - 4. बुद्धिमान

Question ID : 26433062228  
Status : Not Answered  
Chosen Option : --

Q.5 निम्नलिखित वाक्य के किस खंड में अशुद्धि है?  
आकासवानी से समाचार प्रसारित हो रहे हैं।

- Ans
- 1. प्रसारित
  - 2. समाचार
  - 3. आकासवानी
  - 4. हैं।

Question ID : 26433066751  
Status : Not Answered  
Chosen Option : --

Q.6 "राहुल ने सभी मित्रों में कहानी सुनाई।"  
उपरोक्त वाक्य में कारक सम्बन्धी त्रुटि पहचानकर निम्नलिखित में से शुद्धतम वाक्य का चयन कीजिए।

- Ans
- 1. राहुल ने सभी मित्रों को कहानी सुनाई।
  - 2. राहुल ने सभी मित्रों के पास कहानी सुनाई।
  - 3. राहुल ने सभी मित्रों से कहानी सुनाई।
  - 4. राहुल ने सभी मित्रों के साथ कहानी सुनाई।

Question ID : 26433066965  
Status : Not Answered  
Chosen Option : --

Q.7 'पगड़ी ओढ़कर आओ।' वाक्य में रेखांकित शब्द के स्थान पर उपयुक्त शब्द क्या होगा?

- Ans
- 1. पहनकर
  - 2. बांधकर
  - 3. बिछाकर
  - 4. डालकर

Question ID : 26433062204  
Status : Not Answered  
Chosen Option : --

Q.8 निम्नलिखित मुहावरे के उचित अर्थ का चयन कीजिए-  
चाँद पर थूकना

- Ans
- 1. सम्माननीय का अनादर करना
  - 2. किसी का आदर करना
  - 3. गलत बातें कहना
  - 4. ऊपर की ओर थूकना

Question ID : 26433065887  
Status : Not Answered  
Chosen Option : --

Q.9 'अमृत' का अर्थ निम्न में से नहीं है-

- Ans
- 1. पारा
  - 2. स्वर्ण
  - 3. जल
  - 4. मोती

Question ID : 26433074413  
Status : Not Answered  
Chosen Option : --

Q.10 निम्नलिखित में से 'प्रकृति' का अर्थ इनमें से क्या नहीं होता है?

- Ans
- 1. पूज्य
  - 2. स्वामी
  - 3. स्वभाव
  - 4. माया

Question ID : 26433080945  
Status : Not Answered  
Chosen Option : --

Q.11 निम्नलिखित वाक्यांश के लिए उपयुक्त एक शब्द क्या होगा?  
किसी को भय से बचाने के लिए वचन देना

- Ans
- 1. सलाह
  - 2. निर्भय
  - 3. सहयोग
  - 4. अभयदान

Question ID : 26433070066  
Status : Not Answered  
Chosen Option : --

Q.12 "अभ्युदय पाठशाला जा रहा है।"  
उपरोक्त वाक्य का सामान्य भविष्य काल में रूपांतरण क्या होगा?

- Ans
- 1. अभ्युदय शायद पाठशाला जाए।
  - 2. अभ्युदय पाठशाला जाएगा।
  - 3. अभ्युदय पाठशाला जा रहा था।
  - 4. अभ्युदय पाठशाला चला गया होगा।

Question ID : 26433066978  
Status : Not Answered  
Chosen Option : --

Q.13 'वर्तमान समय में योग अत्यंत आवश्यक है।'  
उक्त वाक्य में रेखांकित शब्द के विलोम शब्द का चयन विकल्पों में से कीजिए।

- Ans
- 1. मनोयोग
  - 2. योगी
  - 3. भोग
  - 4. व्यायाम

Question ID : 26433079739  
Status : Not Answered  
Chosen Option : --

Q.14 विकल्पों में से 'केशरी' शब्द के पर्यायवाची से निम्न वाक्य के रिक्त स्थान की पूर्ति कीजिए।  
जंगल में \_\_\_\_\_ दहाड़ता है।

- Ans
- 1. अंडज
  - 2. व्याल
  - 3. गदर्भ
  - 4. शार्दूल

Question ID : 26433079182  
Status : Not Answered  
Chosen Option : --

Q.15 'केवल मात्र आपके दर्शन पर्याप्त होंगे।' इस वाक्य में अनुपयुक्त शब्द है-

- Ans
- 1. केवल
  - 2. दर्शन
  - 3. होंगे
  - 4. आपके

Question ID : 26433091307  
Status : Not Answered  
Chosen Option : --

**Comprehension:**

निम्नलिखित गद्यांश में कुछ शब्दों को हटा दिया गया है। दिए गए विकल्पों की सहायता से रिक्त स्थानों की पूर्ति कीजिए। प्रत्येक संख्या के लिए सबसे उपयुक्त विकल्प का चयन कीजिए।  
जीवन 1. \_\_\_\_\_ से बना है। संघर्ष के समय ही सारी 2. \_\_\_\_\_ प्रकट हो उठती है। मनुष्य संघर्ष के समय जितना प्रखर, 3. \_\_\_\_\_ और कर्मठ हो उठता है, उतना और किसी अवसर पर नहीं दिखाई देता। संघर्ष का अर्थ 4. \_\_\_\_\_ नहीं है। जब मनुष्य पूरे मन से कर्म करता है, तो उसे 5. \_\_\_\_\_ मिलता है।

**SubQuestion No : 16**

Q.16 रिक्त स्थान 1 की पूर्ति के लिए सबसे उपयुक्त विकल्प का चयन करें।

- Ans
- 1. मेल
  - 2. संघर्ष
  - 3. बराबरी
  - 4. समानता

Question ID : 264330110873  
Status : Not Answered  
Chosen Option : --

**Comprehension:**

निम्नलिखित गद्यांश में कुछ शब्दों को हटा दिया गया है। दिए गए विकल्पों की सहायता से रिक्त स्थानों की पूर्ति कीजिए। प्रत्येक संख्या के लिए सबसे उपयुक्त विकल्प का चयन कीजिए।  
जीवन 1. \_\_\_\_\_ से बना है। संघर्ष के समय ही सारी 2. \_\_\_\_\_ प्रकट हो उठती है। मनुष्य संघर्ष के समय जितना प्रखर, 3. \_\_\_\_\_ और कर्मठ हो उठता है, उतना और किसी अवसर पर नहीं दिखाई देता। संघर्ष का अर्थ 4. \_\_\_\_\_ नहीं है। जब मनुष्य पूरे मन से कर्म करता है, तो उसे 5. \_\_\_\_\_ मिलता है।

**SubQuestion No : 17**

Q.17 रिक्त स्थान 2 की पूर्ति के लिए सबसे उपयुक्त विकल्प का चयन करें।

- Ans
- 1. प्रचंड शक्ति
  - 2. जीवनी-शक्ति
  - 3. शारीरिक शक्ति
  - 4. वाह्य शक्ति

Question ID : 264330110874  
Status : Not Answered  
Chosen Option : --

**Comprehension:**

निम्नलिखित गद्यांश में कुछ शब्दों को हटा दिया गया है। दिए गए विकल्पों की सहायता से रिक्त स्थानों की पूर्ति कीजिए। प्रत्येक संख्या के लिए सबसे उपयुक्त विकल्प का चयन कीजिए।  
जीवन 1. \_\_\_\_\_ से बना है। संघर्ष के समय ही सारी 2. \_\_\_\_\_ प्रकट हो उठती है। मनुष्य संघर्ष के समय जितना प्रखर, 3. \_\_\_\_\_ और कर्मठ हो उठता है, उतना और किसी अवसर पर नहीं दिखाई देता। संघर्ष का अर्थ 4. \_\_\_\_\_ नहीं है। जब मनुष्य पूरे मन से कर्म करता है, तो उसे 5. \_\_\_\_\_ मिलता है।

**SubQuestion No : 18****Q.18 रिक्त स्थान 3 की पूर्ति के लिए सबसे उपयुक्त विकल्प का चयन करें।**

- Ans  1. कांतिहीन  
 2. निस्तेज  
 3. कुरूप  
 4. तेजस्वी

Question ID : 264330110875  
Status : Not Answered  
Chosen Option : --

**Comprehension:**

निम्नलिखित गद्यांश में कुछ शब्दों को हटा दिया गया है। दिए गए विकल्पों की सहायता से रिक्त स्थानों की पूर्ति कीजिए। प्रत्येक संख्या के लिए सबसे उपयुक्त विकल्प का चयन कीजिए।  
जीवन 1. \_\_\_\_\_ से बना है। संघर्ष के समय ही सारी 2. \_\_\_\_\_ प्रकट हो उठती है। मनुष्य संघर्ष के समय जितना प्रखर, 3. \_\_\_\_\_ और कर्मठ हो उठता है, उतना और किसी अवसर पर नहीं दिखाई देता। संघर्ष का अर्थ 4. \_\_\_\_\_ नहीं है। जब मनुष्य पूरे मन से कर्म करता है, तो उसे 5. \_\_\_\_\_ मिलता है।

**SubQuestion No : 19****Q.19 रिक्त स्थान 4 की पूर्ति के लिए सबसे उपयुक्त विकल्प का चयन करें।**

- Ans  1. लड़ना-भिड़ना  
 2. हँसना-रोना  
 3. खेलना-कूदना  
 4. खाना-पीना

Question ID : 264330110876  
Status : Not Answered  
Chosen Option : --

**Comprehension:**

निम्नलिखित गद्यांश में कुछ शब्दों को हटा दिया गया है। दिए गए विकल्पों की सहायता से रिक्त स्थानों की पूर्ति कीजिए। प्रत्येक संख्या के लिए सबसे उपयुक्त विकल्प का चयन कीजिए।  
जीवन 1. \_\_\_\_\_ से बना है। संघर्ष के समय ही सारी 2. \_\_\_\_\_ प्रकट हो उठती है। मनुष्य संघर्ष के समय जितना प्रखर, 3. \_\_\_\_\_ और कर्मठ हो उठता है, उतना और किसी अवसर पर नहीं दिखाई देता। संघर्ष का अर्थ 4. \_\_\_\_\_ नहीं है। जब मनुष्य पूरे मन से कर्म करता है, तो उसे 5. \_\_\_\_\_ मिलता है।

**SubQuestion No : 20****Q.20 रिक्त स्थान 5 की पूर्ति के लिए सबसे उपयुक्त विकल्प का चयन करें।**

- Ans  1. वेदना  
 2. पीड़ा  
 3. असीम आनंद  
 4. दुःख

Question ID : 264330110877  
Status : Not Answered  
Chosen Option : --

# Constable GD in CAPFs SSF Rifleman GD in Assam Rifles and Sepoy in NCB Examination 2022

Roll Number	KD Job Updates
Candidate Name	KD Job Updates
Venue Name	TCS Gito Bitan
Exam Date	25/01/2023
Exam Time	9:00 AM - 10:00 AM
Subject	Constable GD Examination 2022

Section : Part-A-General Intelligence and Reasoning

**Q.1** Select the correct combination of mathematical signs to sequentially replace the \* signs and to balance the given equation.  
 $19 * 5 * 5 * 220 * 2 * 10$

- Ans
- 1. =, ÷, ×, +, -
  - 2. ×, +, =, ÷, -
  - 3. +, -, =, ×, +
  - 4. -, +, ×, ÷, =

Question ID : 26433094991

Status : Answered

Chosen Option : 2

**Q.2** In this question, three statements are given, followed by two conclusions numbered I and II. Assuming the statements to be true, even if they seem to be at variance with commonly known facts, decide which of the conclusions logically follows/follow from the statements.

Statements:

Some raisins are grapes.

All grapes are apples.

All raisins are fruits.

Conclusions:

I. Some fruits are apples.

II. Some apples are raisins.

- Ans
- 1. Only conclusion I follows.
  - 2. Neither conclusion I nor II follows.
  - 3. Both conclusions I and II follow.
  - 4. Only conclusion II follows.

Question ID : 26433070384

Status : Answered

Chosen Option : 3

Q.3 In a certain code language, BLUSH is written as 'EPXWK', and SPLASH is written as 'VTOEVL'. How will 'SPRITE' be written in the same code language?


- Ans
- 1. VTUNWI
  - 2. VTUNXI
  - 3. VTUMXI
  - 4. VTUMWI

Question ID : 26433067986

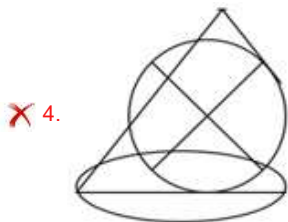
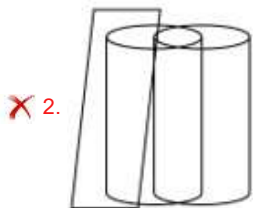
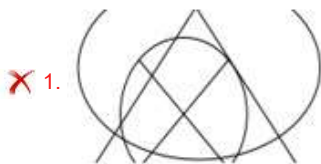
Status : Answered

Chosen Option : 4

Q.4 Select the option figure which is embedded in the given figure. (Rotation is NOT allowed).



Ans



Question ID : 26433089773

Status : Answered

Chosen Option : 3



Q.5 Which of the following numbers will replace the question mark (?) in the given series?  
123, 88, 127, 94, 131, 100, ?, 106, 139

- Ans
- 1. 138
  - 2. 136
  - 3. 105
  - 4. 135

Question ID : 26433085639  
Status : Answered  
Chosen Option : 4

Q.6 In a certain code language, 'You Are Kind' is written as 'hat me ga'. 'She Is Smart' is written as 'fe ta nou'. 'She Is Kind' is written as 'fe ta ga'. How is the word 'Kind' written in the same code language?

- Ans
- 1. ta
  - 2. ga
  - 3. fe
  - 4. hat

Question ID : 26433090105  
Status : Answered  
Chosen Option : 2

Q.7 Select the option that is related to the third word in the same way as the second word is related to the first word. (The words must be considered as meaningful English words and must NOT be related to each other based on the number of letters/number of consonants/vowels in the word)  
Baker : Bread :: cobbler : \_\_\_\_\_

- Ans
- 1. Bottle
  - 2. Book
  - 3. Nail
  - 4. shoes

Question ID : 26433079402  
Status : Answered  
Chosen Option : 4

Q.8 Select the set in which the numbers are related in the same way as are the numbers of the following set.

(NOTE : Operations should be performed on the whole numbers, without breaking down the numbers into its constituent digits. E.g. 13 – Operations on 13 such as adding /subtracting/multiplying etc. to 13 can be performed. Breaking down 13 into 1 and 3 and then performing mathematical operations on 1 and 3 is NOT allowed)  
(261, 54, 25)  
(270, 45, 15)

- Ans
- 1. (298, 67, 45)
  - 2. (182, 87, 69)
  - 3. (288, 82, 50)
  - 4. (236, 80, 56)

Question ID : 26433076478  
Status : Answered  
Chosen Option : 3

**Q.9** Six students are sitting around a circular table facing the centre. Ali is sitting third to the right of Naeem. Syed is sitting second to the left of Ali. Sara is the immediate neighbour of Ali and Syed. Shenaz is second to the right of Ali. David is sitting third to the right of Syed. Who is sitting between Sara and David?

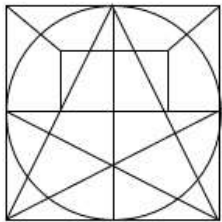
- Ans
- 1. Naeem
  - 2. Shenaz
  - 3. Ali
  - 4. Syed

Question ID : 26433081774

Status : Answered

Chosen Option : 3

**Q.10** Select the option figure that is embedded in the given figure (rotation is NOT allowed).



Ans

- 1.
- 2.
- 3.
- 4.

Question ID : 26433069480

Status : Answered

Chosen Option : 1

**Q.11** Which two signs should be interchanged to make the below equation mathematically correct?

$$108 \div 27 \times 54 - 40 + 34 = 48$$

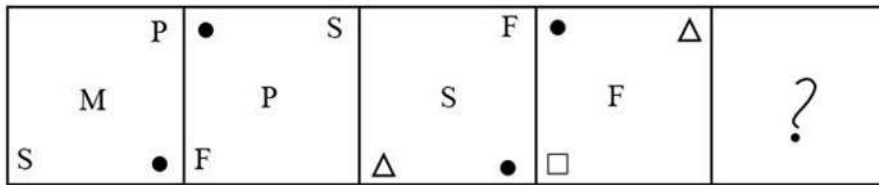
- Ans
- 1. - and +
  - 2. ÷ and ×
  - 3. × and -
  - 4. ÷ and -

Question ID : 264330117515

Status : Answered

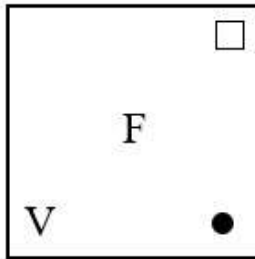
Chosen Option : 2

**Q.12** Select the figure that will come in place of the question mark (?) in the following figure series.

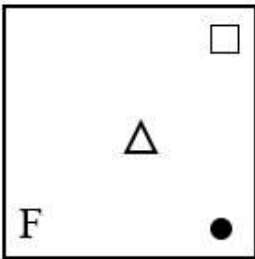


Ans

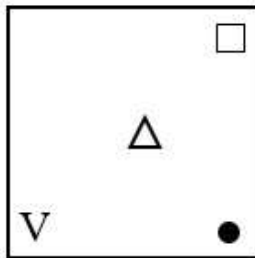
✗ 1.



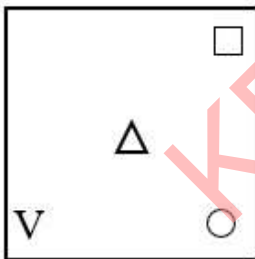
✗ 2.



✓ 3.



✗ 4.

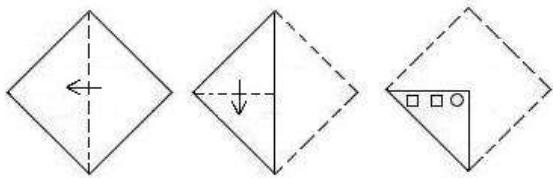


Question ID : 26433081690

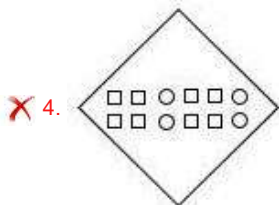
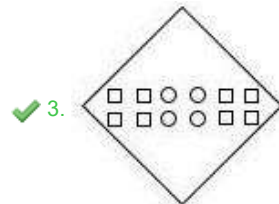
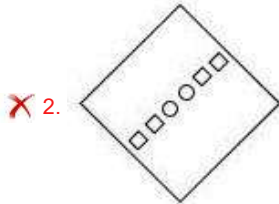
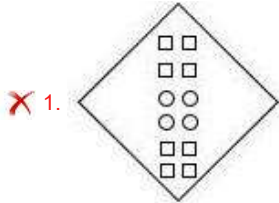
Status : Answered

Chosen Option : 3

Q.13 A paper is folded and cut as shown below. How will it appear when unfolded?



Ans



Question ID : 26433090952

Status : Answered

Chosen Option : 3

Q.14 Select the letter-cluster from among the given options that can replace the question mark (?) in the following series.  
RSXE, VNBI, ZIFM, ? , HYNU

Ans ✓ 1. DDJQ

✗ 2. FCZE

✗ 3. FBHL

✗ 4. DWUG

Question ID : 26433074743

Status : Answered

Chosen Option : 1

Q.15 Six students A, B, C, D, E and F are sitting around a circular table facing the centre. D is to the immediate right of E and E is to the immediate right of F. A is the immediate neighbour of D and C. Who among the following is sitting second to the right of B?

- Ans
- 1. C
  - 2. E
  - 3. A
  - 4. F

Question ID : 26433068487  
Status : Answered  
Chosen Option : 3

Q.16 Which of the following numbers will replace the question mark (?) in the given series?

7, 36, 66, ?, 129, 162

- Ans
- 1. 97
  - 2. 100
  - 3. 99
  - 4. 98

Question ID : 26433069387  
Status : Answered  
Chosen Option : 1

Q.17 'A @ B' means 'A is the son of B'  
'A & B' means 'A is the mother of B'  
'A # B' means 'A is the daughter of B'  
Which of the following options means 'R is the sister of P'?

- Ans
- 1. R @ S @ Q # P
  - 2. P # Q @ R # S
  - 3. R @ S & Q # P
  - 4. P @ Q & R # S

Question ID : 26433069658  
Status : Answered  
Chosen Option : 4

Q.18 Which of the following terms will replace the question mark (?) in the given series?  
CMHO, DPMV, ?, FVWJ, GYBQ

- Ans
- 1. ERPZ
  - 2. ESRB
  - 3. ERSC
  - 4. ESRC

Question ID : 26433069451  
Status : Answered  
Chosen Option : 4

Q.19 Which of the following options represents the correct order of the given words as they would appear in the English dictionary?

1. Breeze
2. Breech
3. Breather
4. Breed
5. Breathe

- Ans
- 1. 5, 2, 3, 4, 1
  - 2. 5, 3, 2, 1, 4
  - 3. 3, 5, 2, 4, 1
  - 4. 5, 3, 2, 4, 1

Question ID : 26433086966

Status : Answered

Chosen Option : 4

Q.20 Select the option that is related to the fifth letter-cluster in the same way as the second letter-cluster is related to the first letter-cluster and the fourth letter-cluster is related to the third letter-cluster.

BEAM : YVZN :: WORD : DLIW :: PLAN : ?

- Ans
- 1. QMBO
  - 2. KOZM
  - 3. TUIH
  - 4. LPYN

Question ID : 26433057480

Status : Answered

Chosen Option : 2

Section : Part-B-General Knowledge and General awareness

Q.1 Who won the Sangeet Natak Akademi Award in Kuchipudi in 2018?

- Ans
- 1. Pasumarthy Ramalinga Sastry
  - 2. Manjamma Jogati
  - 3. Radha Sridhar
  - 4. Madambi Subramanian Namboodiri

Question ID : 264330115818

Status : Not Attempted and Marked For Review

Chosen Option : --

Q.2 Which political leader won the bypoll election from Jubaraj Nagar constituency in Tripura, in June 2022?

- Ans
- 1. Bandhu Tirkey
  - 2. Bishnu Sethi
  - 3. Rutuja Latke
  - 4. Malina Debnath

Question ID : 264330114969

Status : Not Attempted and Marked For Review

Chosen Option : --

Q.3 \_\_\_\_\_ scheme aims to provide measures for Comprehensive Rehabilitation for Welfare of Transgender Persons.

- Ans
- 1. Support for Marginalised Individuals for Livelihood and Education
  - 2. Scheme for Medium Individuals for Livelihood and Enterprise
  - 3. Support for Marginalised Individuals for Livelihood and Enterprise
  - 4. Support for Marginalised Individuals for Livelihood and Entity

Question ID : 264330116164  
Status : Marked For Review  
Chosen Option : 1

Q.4 Excessive use of synthetic fertilizers leads to:

- Ans
- 1. clean and pure environment
  - 2. noise pollution
  - 3. Increase in soil organic matter
  - 4. soil degradation

Question ID : 264330115431  
Status : Answered  
Chosen Option : 4

Q.5 In ancient times the area to the south of the \_\_\_\_\_ river was known as Magadha.

- Ans
- 1. Ganga
  - 2. Tapti
  - 3. Yamuna
  - 4. Narmada

Question ID : 26433089192  
Status : Answered  
Chosen Option : 1

Q.6 In the game of football, the distance between the goalposts is \_\_\_\_\_ whereas the distance from the lower edge of the crossbar to the ground is \_\_\_\_\_.

- Ans
- 1. 7.52 m; 4.24 m
  - 2. 7.32 m; 2.44 m
  - 3. 2.44 m; 7.32 m
  - 4. 8.12 m; 2.24 m

Question ID : 26433089939  
Status : Marked For Review  
Chosen Option : 1

Q.7 शीतकालीन वर्षा की कुल मात्रा को दिए गए स्थानीय नाम की पहचान कीजिए।

- Ans
- 1. ताहिती
  - 2. काल बैसाखी
  - 3. महावत
  - 4. लू

Question ID : 26433091486  
Status : Answered  
Chosen Option : 3

Q.8 How many Schedules are there in the Indian Constitution?

- Ans
- 1. 12
  - 2. 15
  - 3. 39
  - 4. 24

Question ID : 26433097126  
Status : Answered  
Chosen Option : 1

Q.9 राष्ट्रीय कृषि और ग्रामीण विकास बैंक (NABARD) पूर्ण रूप से \_\_\_\_\_ के स्वामित्व में है।

- Ans
- 1. भारतीय रिजर्व बैंक
  - 2. भारतीय प्रतिभूति और विनियम बोर्ड
  - 3. भारतीय स्टेट बैंक
  - 4. भारत सरकार

Question ID : 264330115302  
Status : Answered  
Chosen Option : 4

Q.10 Three of the following four are examples of mammalia, and therefore form a group. Which is the one that does not belong to that group?

- Ans
- 1. Platypus
  - 2. Penguin
  - 3. Kangaroo
  - 4. Flying fox

Question ID : 264330115189  
Status : Answered  
Chosen Option : 2



Q.11 In the post-independence period, who won the 1<sup>st</sup> individual Olympic Medal for India in 1952?

- Ans  1. Khashaba Jadhav  
 2. Milkha Singh  
 3. Kapil Dev  
 4. Karnam Malleswari

Question ID : 26433089919  
Status : Answered  
Chosen Option : 4

Q.12 The Bhil tribe living in the \_\_\_\_\_ controlled the mountain passes between the north and the Deccan.

- I. Western Ghats  
II. Eastern Ghats

- Ans  1. Both I and II  
 2. Only I  
 3. Neither I nor II  
 4. Only II

Question ID : 264330115697  
Status : Answered  
Chosen Option : 4

Q.13 Which of the following Articles of the Constitution of India states that the Attorney General for India will be appointed by the President?

- Ans  1. Article 76  
 2. Article 123  
 3. Article 12  
 4. Article 115

Question ID : 26433086821  
Status : Answered  
Chosen Option : 1

Q.14 The Eighth Five Year Plan of India got delayed due to \_\_\_\_\_.

- Ans  1. low agriculture output  
 2. rise in global poverty  
 3. political uncertainty at the Centre  
 4. lack of technology

Question ID : 264330116117  
Status : Answered  
Chosen Option : 3

Q.15 What is the number of electrons found in the outermost shell of the halogens?

- Ans  1. Five  
 2. Seven  
 3. Two  
 4. One

Question ID : 26433087850  
Status : **Marked For Review**  
Chosen Option : 1

Q.16 Which of the following is a tree found in coniferous Forests?

- Ans  1. Teak  
 2. Keekar  
 3. Sundari  
 4. Chir

Question ID : 264330115549  
Status : **Answered**  
Chosen Option : 4

Q.17 The Gochi festival is predominantly celebrated in which of the following states of India?

- Ans  1. Himachal Pradesh  
 2. Assam  
 3. Tamil Nadu  
 4. Rajasthan

Question ID : 26433094893  
Status : **Answered**  
Chosen Option : 2

Q.18 Who is the next High Commissioner of India to the United Kingdom as announced in August 2022?

- Ans  1. Ruchi Ghanashyam  
 2. Vikram Doraiswami  
 3. Gaitri Issar Kumar  
 4. Yashvardhan Kumar Sinha

Question ID : 264330115005  
Status : **Not Answered**  
Chosen Option : --

Q.19 The light of the sun takes about \_\_\_\_\_ minutes to reach the earth.

- Ans
- 1. 10
  - 2. 7
  - 3. 9
  - 4. 8

Question ID : 264330116027  
Status : Answered  
Chosen Option : 4

Q.20 Which among the following dance forms is not associated with Chhattisgarh?

- Ans
- 1. Bhagoria
  - 2. Panthi
  - 3. Pandwani
  - 4. Saila

Question ID : 264330115067  
Status : Answered  
Chosen Option : 3

Section : Part-C-Elementary Mathematics

Q.1 Rama spends  $\frac{5}{8}$  of her weekly salary on rent and  $\frac{1}{3}$  of the remaining salary on food, leaving ₹40 available for other expenses. The weekly salary of Rama is:

- Ans
- 1. ₹160
  - 2. ₹40
  - 3. ₹150
  - 4. ₹170

Question ID : 26433073125  
Status : Answered  
Chosen Option : 1

Q.2 The selling price of 28 items is equal to the cost price of 16 items. What is the profit or loss percent? (correct to 2 decimal places)

- Ans
- 1. Loss of 44.25%
  - 2. Profit of 44.25%
  - 3. Profit of 42.86%
  - 4. Loss of 42.86%

Question ID : 26433074922  
Status : Answered  
Chosen Option : 4

Q.3 दो उम्मीदवारों के बीच हुए एक चुनाव में 10% मतदाताओं ने मतदान नहीं किया और 150 मतों को अवैध घोषित कर दिया गया। विजेता को अपने प्रतिद्वंदी से 350 मत अधिक मिले, इस प्रकार उसने मतदाता सूची में पंजीकृत कुल मतदाताओं के 50% मत प्राप्त किए। पराजित उम्मीदवार के कुल पंजीकृत मतों में से प्रतिशत मत \_\_\_\_\_ है। (दशमलव के बाद एक स्थान तक गणना करें)

- Ans
- 1. 32.5 प्रतिशत
  - 2. 25.6 प्रतिशत
  - 3. 30.2 प्रतिशत
  - 4. 28.5 प्रतिशत

Question ID : 26433081556

Status : Not Attempted and Marked For Review

Chosen Option : --

Q.4 Two numbers are in the ratio of 5 : 9, and their LCM is 405. Find the numbers.

- Ans
- 1. 45 and 81
  - 2. 65 and 95
  - 3. 45 and 71
  - 4. 55 and 99

Question ID : 26433082590

Status : Answered

Chosen Option : 1

Q.5 A person went to a place at a speed of 20 km/h and came back at a speed of 30 km/h. During this journey, if the time taken is 2 hours, determine the distance of that place.

- Ans
- 1. 20 km
  - 2. 25 km
  - 3. 24 km
  - 4. 30 km

Question ID : 26433071333

Status : Answered

Chosen Option : 3

Q.6 एक बैंक अर्ध-वार्षिक रूप से चक्रवृद्धि 5% प्रतिवर्ष की दर से चक्रवृद्धि ब्याज का भुगतान करता है। एक ग्राहक ने एक वर्ष में 1 जनवरी और 1 जुलाई प्रत्येक को Rs.1,600 जमा किए। वर्ष के अंत में जमा की गई राशि पर उसे मिलने वाला ब्याज है:

- Ans
- 1. Rs.91
  - 2. Rs.121
  - 3. Rs.132
  - 4. Rs.88

Question ID : 26433065288

Status : Answered

Chosen Option : 2

Q.7 At a certain rate of interest per annum, the difference between the compound interest, compounding annually and the simple interest on ₹5,000 for 2 years is ₹72. The rate of interest per annum is:

- Ans
- 1. 12%
  - 2. 11%
  - 3. 10%
  - 4. 14%

Question ID : 26433082407  
Status : Answered  
Chosen Option : 1

Q.8 The average weight of 45 students of a school is 55 kg. If the weight of the teacher is included, the average weight rises by 300 grams. Find the weight of the teacher.

- Ans
- 1. 69.8 kg
  - 2. 67.8 kg
  - 3. 70.8 kg
  - 4. 68.8 kg

Question ID : 26433082957  
Status : Answered  
Chosen Option : 4

Q.9 Raj takes twice as much time as Sujay and thrice as much time as Ronak to finish a piece of work. If Sujay can do the work alone in 6 days, then in how many days all three together can finish the same work.

- Ans
- 1. 2 days
  - 2. 3 days
  - 3. 4 days
  - 4. 1 day

Question ID : 26433080135  
Status : Answered  
Chosen Option : 1

Q.10 Allowing 15 percent and 6 percent successive discount, the selling price of an article becomes Rs. 9588, then the marked price is:

- Ans
- 1. Rs. 10800
  - 2. Rs. 11200
  - 3. Rs. 12000
  - 4. Rs. 10000

Question ID : 264330116733  
Status : Answered  
Chosen Option : 3

Q.11 A can complete  $\frac{2}{5}$ th part of the work in 12 days and B can complete  $\frac{7}{8}$ th part of the same work in 21 days. Find the number of days in which A and B together can complete the work.

- Ans
- 1.  $11\frac{1}{3}$  days
  - 2.  $14\frac{1}{3}$  days
  - 3.  $40\frac{1}{3}$  days
  - 4.  $43\frac{1}{3}$  days

Question ID : 264330116848  
Status : Answered  
Chosen Option : 3

Q.12 If 15 percent of 40 percent of a number is 30, then what is the number?

- Ans
- 1. 600
  - 2. 800
  - 3. 400
  - 4. 500

Question ID : 26433079851  
Status : Answered  
Chosen Option : 4

Q.13 What is the greatest possible length of scale to measure exactly, the following?  
15 feet, 12 feet 9 inches, 16 feet 3 inches, and 23 feet 6 inches

- Ans
- 1. 4 inches
  - 2. 12 feet 3 inches
  - 3. 23 feet 6 inches
  - 4. 3 inches

Question ID : 26433076170  
Status : Marked For Review  
Chosen Option : 4

Q.14 Veer buys 200 guavas for Rs.1,800. Some of these guavas are rotten and are thrown away. He sells the remaining guavas at Rs.14 each and makes a profit of Rs.230. The percentage of guavas thrown away is:

- Ans
- 1. 27.5%
  - 2. 30.8%
  - 3. 14.5%
  - 4. 28.5%

Question ID : 26433074921  
Status : Answered  
Chosen Option : 1

**Q.15** The diameter of the base of a right circular cylinder is 56 cm, and its height is 18 cm. The area of the curved surface of the cylinder is:  
(Use  $\pi = 22/7$ )

- Ans
- 1. 3068 sq cm
  - 2. 3188 sq cm
  - 3. 3168 sq cm
  - 4. 2168 sq cm

Question ID : 26433074240  
Status : Answered  
Chosen Option : 3

**Q.16** Successive discounts of 10%, 15% and 20% amount to a single discount of:

- Ans
- 1. 0.388%
  - 2. 388%
  - 3. 3.88%
  - 4. 38.80%

Question ID : 26433073011  
Status : Answered  
Chosen Option : 4

**Q.17** If  $a : b = 5 : 1$ , then what is the value of  $3a + 4b : 3a - 4b$ ?

- Ans
- 1. 19 : 11
  - 2. 13 : 21
  - 3. 14 : 11
  - 4. 11 : 12

Question ID : 26433079871  
Status : Answered  
Chosen Option : 1

**Q.18** In what ratio should lentils costing Rs.77.50/kg be mixed with lentils costing Rs.83.50/kg to get the average price of Rs.80/kg of the resulting mixture?

- Ans
- 1. 5 : 7
  - 2. 4 : 3
  - 3. 3 : 4
  - 4. 7 : 5

Question ID : 26433080288  
Status : Answered  
Chosen Option : 4

**Q.19** A hemispherical dome of a tomb having diameter of 3.5 m is to be painted. If the cost of painting is 20 paise per  $\text{cm}^2$ , then what is the cost (in ₹) of painting the dome from inside? Take  $\pi = \frac{22}{7}$

- Ans**
- ✓ 1. ₹38,500
  - ✗ 2. ₹35,000
  - ✗ 3. ₹28,500
  - ✗ 4. ₹25,000

Question ID : 26433076251  
Status : Answered  
Chosen Option : 1

**Q.20** A 4 km/h की चाल से चलता है और उसके चलने के 5 घंटे बाद, B उसके पीछे 10 km/h की चाल से साइकिल चलाता है। B प्रारंभ स्थान से कितनी दूरी पर A से मिलता है?

- Ans**
- ✗ 1. 43.33 km
  - ✗ 2. 63.33 km
  - ✓ 3. 33.33 km
  - ✗ 4. 36.33 km

Question ID : 26433073036  
Status : Answered  
Chosen Option : 3

Section : Part-D-English

**Q.1** Select the option that can be used as a one-word substitute for the underlined group of words.

I studied a book on the study of stars.

- Ans**
- ✓ 1. Astronomy
  - ✗ 2. Geology
  - ✗ 3. Astrophysics
  - ✗ 4. Meteorology

Question ID : 26433088612  
Status : Answered  
Chosen Option : 1



**Q.2** Select the most appropriate option to substitute the underlined segment in the given sentence to make it a meaningful sentence. If no substitution is required, select 'No substitution'.

The COVID-19 pandemic pose innumerable challenges to our education system, and engineering education was no exception.

- Ans**
- 1. posed innumerable challenges to our education system, and engineering education was no exception.
  - 2. No substitution
  - 3. have been posing innumerable challenges to our education system, and engineering education is not any exception.
  - 4. posed innumerable challenges to our education system, and engineering education is not a exception.

Question ID : 26433092048

Status : Answered

Chosen Option : 1

**Q.3** Select the most appropriate synonym of the underlined word in the following sentence.

He distracted him while his partner burgled his shop.

- Ans**
- 1. Burnt
  - 2. Rooted
  - 3. Arrived
  - 4. Looted

Question ID : 26433072352

Status : Marked For Review

Chosen Option : 4

**Q.4** Select the most appropriate option to substitute the underlined segment in the given sentence to make it a meaningful sentence. If no substitution is required, select 'No substitution'.

A new kind of pollution that is acquiring serious dimensions was noise pollution.

- Ans**
- 1. have been acquiring serious dimensions is noise pollution.
  - 2. is acquiring serious dimensions is noise pollution.
  - 3. No substitution
  - 4. have acquiring serious dimensions is noise pollution.

Question ID : 26433092041

Status : Marked For Review

Chosen Option : 1

**Q.5** Select the most appropriate synonym of the word given below to fill in the blank in the following sentence.

**Toying**

My cat, Mili loves \_\_\_\_\_ with the toy mouse.

- Ans
- 1. licking
  - 2. going
  - 3. dancing
  - 4. playing

Question ID : 26433084779  
Status : Answered  
Chosen Option : 4

**Q.6** Select the most appropriate meaning of the given idiom.

**Risk life and limb**

- Ans
- 1. Something that happened unexpectedly
  - 2. Seriously ill
  - 3. In danger of death or serious injury
  - 4. Making unnecessary fuss

Question ID : 26433072687  
Status : Answered  
Chosen Option : 3

**Q.7** Select the most appropriate ANTONYM of the given word.  
**Vanquish**

- Ans
- 1. Halt
  - 2. Finish
  - 3. Surrender
  - 4. Stoop

Question ID : 26433066085  
Status : Marked For Review  
Chosen Option : 4

**Q.8** Select the most appropriate synonym of the given word.

**Mean**

- Ans
- 1. Greedy
  - 2. Unconscious
  - 3. Mode
  - 4. Wise

Question ID : 26433088533  
Status : Answered  
Chosen Option : 2

**Q.9 Select the most appropriate ANTONYM of the word given in the bracket to fill in the blank.**

I can't forget the (convivial)\_\_\_\_\_ atmosphere at the college reunion.

- Ans
- 1. affable
  - 2. antisocial
  - 3. hospitable
  - 4. lively

Question ID : 26433059595  
Status : Answered  
Chosen Option : 2

**Q.10 Identify the correctly spelt sentence.**

- Ans
- 1. The collector is the district magistrate in admiinistration.
  - 2. The collector is the district magistrate in administration.
  - 3. The collector is the district magistrate in adminestration.
  - 4. The collector is the district magistrate in administration.

Question ID : 26433072834  
Status : Answered  
Chosen Option : 2

**Q.11 Select the most appropriate meaning of the idiom in bold in the given sentence.**

I am going to take a leaf out of your book and start packing my own lunches.

- Ans
- 1. To study very hard
  - 2. A book containing a list of secret contacts
  - 3. Imitate or emulate someone in a particular way
  - 4. Be in somebody's favour or good opinion

Question ID : 26433072450  
Status : Answered  
Chosen Option : 3

**Q.12 Select the INCORRECTLY spelt word.**

- Ans
- 1. Congruent
  - 2. Circamference
  - 3. Democracy
  - 4. Demolish

Question ID : 26433073722  
Status : Answered  
Chosen Option : 2

**Q.13** Select the most appropriate **ANTONYM** of the word given in the brackets to fill in the blank.

We live on the \_\_\_\_\_ (centre) of the city.

- Ans
- 1. interior
  - 2. outskirts
  - 3. middle
  - 4. downtown

Question ID : 26433088854  
Status : Answered  
Chosen Option : 2

**Q.14** The following sentence has been divided into parts. One of them may contain an error. Select the part that contains the error from the given options. If you don't find any error, mark 'No error' as your answer.  
The immense talent / we having at our disposal is / impressive to say the least.

- Ans
- 1. we having at our disposal is
  - 2. impressive to say the least
  - 3. No error
  - 4. The immense talent

Question ID : 264330114513  
Status : Answered  
Chosen Option : 1

**Q.15** Select the correct pair of words for the blanks in the given sentence.

\_\_\_\_\_ are the prime resource of a country and a tea is served in a \_\_\_\_\_.

- Ans
- 1. cattle; cattle
  - 2. kettle; kettle
  - 3. kettle; cattle
  - 4. cattle; kettle

Question ID : 26433060546  
Status : Answered  
Chosen Option : 4

**Comprehension:**

In the following passage, some words have been deleted. Read the passage carefully and select the most appropriate option to fill in each blank.

Accidents resulting from (1)\_\_\_\_\_ driving have become a daily affair. The speed maniacs responsible for most of them escape (2)\_\_\_\_\_ after knocking down a person, they speed away before anyone can take down the number of their vehicle. It is often young people from affluent families, not even eligible for a driving licence, who (3)\_\_\_\_\_ in reckless driving. The penalties imposed for reckless driving are much too (4)\_\_\_\_\_ to be effective. The penalty for reckless driving should be raised and the general public should be made (5)\_\_\_\_\_ of the consequences of reckless driving.

**SubQuestion No : 16**

**Q.16 Select the most appropriate option to fill in blank 1.**

- Ans  1. Experimental  
 2. Reckless  
 3. Careful  
 4. Rude

Question ID : 26433092898

Status : Answered

Chosen Option : 2

**Comprehension:**

In the following passage, some words have been deleted. Read the passage carefully and select the most appropriate option to fill in each blank.

Accidents resulting from (1)\_\_\_\_\_ driving have become a daily affair. The speed maniacs responsible for most of them escape (2)\_\_\_\_\_ after knocking down a person, they speed away before anyone can take down the number of their vehicle. It is often young people from affluent families, not even eligible for a driving licence, who (3)\_\_\_\_\_ in reckless driving. The penalties imposed for reckless driving are much too (4)\_\_\_\_\_ to be effective. The penalty for reckless driving should be raised and the general public should be made (5)\_\_\_\_\_ of the consequences of reckless driving.

**SubQuestion No : 17**

**Q.17 Select the most appropriate option to fill in blank 2.**

- Ans  1. luxury  
 2. notice  
 3. punishment  
 4. limit

Question ID : 26433092899

Status : Answered

Chosen Option : 3

**Comprehension:**

In the following passage, some words have been deleted. Read the passage carefully and select the most appropriate option to fill in each blank.

Accidents resulting from (1)\_\_\_\_\_ driving have become a daily affair. The speed maniacs responsible for most of them escape (2)\_\_\_\_\_ after knocking down a person, they speed away before anyone can take down the number of their vehicle. It is often young people from affluent families, not even eligible for a driving licence, who (3)\_\_\_\_\_ in reckless driving. The penalties imposed for reckless driving are much too (4)\_\_\_\_\_ to be effective. The penalty for reckless driving should be raised and the general public should be made (5)\_\_\_\_\_ of the consequences of reckless driving.

**SubQuestion No : 18**

**Q.18 Select the most appropriate option to fill in blank 3.**

- Ans  1. frustrate  
 2. indulge  
 3. attack  
 4. praise

Question ID : 26433092900

Status : Answered

Chosen Option : 2

**Comprehension:**

In the following passage, some words have been deleted. Read the passage carefully and select the most appropriate option to fill in each blank.

Accidents resulting from (1)\_\_\_\_\_ driving have become a daily affair. The speed maniacs responsible for most of them escape (2)\_\_\_\_\_ after knocking down a person, they speed away before anyone can take down the number of their vehicle. It is often young people from affluent families, not even eligible for a driving licence, who (3)\_\_\_\_\_ in reckless driving. The penalties imposed for reckless driving are much too (4)\_\_\_\_\_ to be effective. The penalty for reckless driving should be raised and the general public should be made (5)\_\_\_\_\_ of the consequences of reckless driving.

**SubQuestion No : 19**

**Q.19 Select the most appropriate option to fill in blank 4.**

- Ans  1. plain  
 2. furious  
 3. lenient  
 4. strong

Question ID : 26433092901

Status : Answered

Chosen Option : 3

**Comprehension:**

In the following passage, some words have been deleted. Read the passage carefully and select the most appropriate option to fill in each blank.

Accidents resulting from (1)\_\_\_\_\_ driving have become a daily affair. The speed maniacs responsible for most of them escape (2)\_\_\_\_\_ after knocking down a person, they speed away before anyone can take down the number of their vehicle. It is often young people from affluent families, not even eligible for a driving licence, who (3)\_\_\_\_\_ in reckless driving. The penalties imposed for reckless driving are much too (4)\_\_\_\_\_ to be effective. The penalty for reckless driving should be raised and the general public should be made (5)\_\_\_\_\_ of the consequences of reckless driving.

SubQuestion No : 20

Q.20 Select the most appropriate option to fill in blank 5.

- Ans
- 1. accuse
  - 2. adhere
  - 3. aware
  - 4. avenge

Question ID : 26433092902

Status : Answered

Chosen Option : 3

Section : Part-D-Hindi

Q.1 नीचे दिए गए वाक्य में रेखांकित अंश के स्थान पर सबसे उपयुक्त विकल्प कौन-सा होगा? गीता को अचार अच्छी लगती है।

- Ans
- 1. अच्छे लगता
  - 2. अच्छी लगते
  - 3. अच्छा लगता
  - 4. अच्छे लगता

Question ID : 26433066720

Status : Not Answered

Chosen Option : --

Q.2 निम्न वाक्य के रेखांकित अंश के स्थान पर सबसे उपयुक्त विकल्प कौन-सा होगा? बेटों में युद्ध हो गई।

- Ans
- 1. लड़ाई
  - 2. युद्ध
  - 3. पिटाई
  - 4. संग्राम

Question ID : 26433072580

Status : Not Answered

Chosen Option : --

Q.3 'मेघदूतम् महाकवि कालीदास का महत्त्वपूर्ण ग्रंथ है।' वाक्य में अशुद्ध वर्तनी वाला शब्द है -

- Ans
- 1. महाकवि
  - 2. मेघदूतम्
  - 3. महत्त्वपूर्ण ग्रंथ
  - 4. कालीदास

Question ID : 26433069695  
Status : Not Answered  
Chosen Option : --

Q.4 'जो पहले न हुआ हो' इस वाक्यांश के लिए सार्थक शब्द है -

- Ans
- 1. अपूर्व
  - 2. अन्यत्र
  - 3. पूर्व
  - 4. अनुत्तन

Question ID : 26433062340  
Status : Not Answered  
Chosen Option : --

Q.5 'वह स्थान जहाँ स्थायी महत्त्व की वस्तुओं का संग्रह हो' इस वाक्यांश के लिए एक शब्द क्या होगा?

- Ans
- 1. पुस्तकालय
  - 2. विद्यालय
  - 3. संग्रहालय
  - 4. प्रयोगशाला

Question ID : 26433065732  
Status : Not Answered  
Chosen Option : --

Q.6 'अविचल' का विलोम निम्न में से नहीं है-

- Ans
- 1. जड़
  - 2. डाँवाडोल
  - 3. दुलमुल
  - 4. विकल

Question ID : 26433062922  
Status : Not Answered  
Chosen Option : --



Q.7 यह हाथी विशालकाय है।  
उपरोक्त वाक्य में रेखांकित शब्द के उचित पर्यायवाची शब्द का चयन विकल्पों में से कीजिए।

- Ans
- 1. सिंह
  - 2. घोटक
  - 3. हस्ति
  - 4. मृग

Question ID : 26433079728  
Status : Not Answered  
Chosen Option : --

Q.8 निम्नलिखित में से किस वाक्य में 'सर्वनाम' सम्बन्धी अशुद्धि है?

- Ans
- 1. मुझे पता है कि आज वह यहाँ आएगा।
  - 2. वह तो बिलकुल पत्थर बन गया।
  - 3. तुम्हारे लिए मैं कुछ भी करने को तैयार हूँ।
  - 4. तुम तेरा घर स्वयं खुद संभालो।

Question ID : 26433063004  
Status : Not Answered  
Chosen Option : --

Q.9 निम्नलिखित वाक्य के रिक्त स्थान के लिए सबसे उपयुक्त मुहावरा क्या होगा?  
'मेरे बच्चे प्रतिदिन \_\_\_\_\_ टहलने जाते हैं।'

- Ans
- 1. औंधे मुँह
  - 2. गिरे मुँह
  - 3. अंधेरे मुँह
  - 4. फटे मुँह

Question ID : 26433066733  
Status : Not Answered  
Chosen Option : --

Q.10 निम्नलिखित विकल्पों में से कौन सा एक वाक्य क्रिया-विशेषण से सम्बन्ध रखता है?

- Ans
- 1. अशोक कल खेलेगा।
  - 2. अनुराधा आयेगी।
  - 3. रेखा गाती है।
  - 4. राहुल पढ़ता है।

Question ID : 26433062947  
Status : Not Answered  
Chosen Option : --

Q.11 'जो लोक में संभव न हो' वाक्यांश के लिए सार्थक एक शब्द क्या होगा?

- Ans  1. अलौकिक  
 2. असंभव  
 3. लौकिक  
 4. लोकायुक्त

Question ID : 26433065867  
Status : Not Answered  
Chosen Option : --

Q.12 निम्न में से कौन सा 'अमृत' शब्द का पर्यायवाची शब्द नहीं है?

- Ans  1. सुधा  
 2. क्षीर  
 3. सोम  
 4. अमिय

Question ID : 26433067070  
Status : Not Answered  
Chosen Option : --

Q.13 निम्नलिखित विकल्पों में से किस एक वाक्य में 'शाप' शब्द के लिए उचित विलोम का प्रयोग हुआ है?

- Ans  1. आपके आशीर्वाद से हम कुशल हैं।  
 2. हम दुःखी हैं।  
 3. हम प्रसन्न हैं।  
 4. हम आपसे बहुत दूर हैं।

Question ID : 26433091192  
Status : Not Answered  
Chosen Option : --

Q.14 'ईद का \_\_\_\_\_ होना' इस मुहावरे को पूरा करें।

- Ans  1. चांद  
 2. सेवई  
 3. ईदी  
 4. मिठाई

Question ID : 26433066813  
Status : Not Answered  
Chosen Option : --

Q.15 वर्तनी की दृष्टि से दिए गए वाक्य के अशुद्ध भाग का चयन कीजिए-  
उसे कई ऐसी घटनाएँ याद हैं जो उसकी जवानी में घटित हुई थीं।

- Ans  1. घटनाएँ याद हैं  
 2. उसे कई ऐसी  
 3. जो उसकी जवानी  
 4. में घटित हुई थीं।

Question ID : 2643306288  
Status : Not Answered  
Chosen Option : --

**Comprehension:**

निम्नलिखित गद्यांश में से कुछ शब्द हटा दिए गए हैं। दिए गए विकल्पों की सहायता से रिक्त स्थानों की पूर्ति कीजिए। प्रत्येक संख्या के लिए उपयुक्त विकल्प का चयन कीजिए।

पहले पूरा संसार एक परिवार के 1. \_\_\_\_\_ था अब टुकड़ों में बँटकर एक-दूसरे 2. \_\_\_\_\_ दूर हो चुका है।  
पहले बड़े-बड़े दालानों-आँगनों में सब 3. \_\_\_\_\_ रहते थे 4. \_\_\_\_\_ छोटे-छोटे डिब्बे जैसे घरों में जीवन  
सिमटने 5. \_\_\_\_\_ है।

**SubQuestion No : 16**

Q.16 रिक्त स्थान 1 की पूर्ति के लिए सर्वाधिक उपयुक्त विकल्प का चयन कीजिए।

- Ans  1. समान  
 2. अंदर  
 3. भीतर  
 4. सामान

Question ID : 26433091283  
Status : Not Answered  
Chosen Option : --

**Comprehension:**

निम्नलिखित गद्यांश में से कुछ शब्द हटा दिए गए हैं। दिए गए विकल्पों की सहायता से रिक्त स्थानों की पूर्ति कीजिए। प्रत्येक संख्या के लिए उपयुक्त विकल्प का चयन कीजिए।

पहले पूरा संसार एक परिवार के 1. \_\_\_\_\_ था अब टुकड़ों में बँटकर एक-दूसरे 2. \_\_\_\_\_ दूर हो चुका है।  
पहले बड़े-बड़े दालानों-आँगनों में सब 3. \_\_\_\_\_ रहते थे 4. \_\_\_\_\_ छोटे-छोटे डिब्बे जैसे घरों में जीवन  
सिमटने 5. \_\_\_\_\_ है।

**SubQuestion No : 17**

Q.17 रिक्त स्थान 2 की पूर्ति के लिए सर्वाधिक उपयुक्त विकल्प का चयन कीजिए।

- Ans  1. के  
 2. से  
 3. में  
 4. ने

Question ID : 26433091284  
Status : Not Answered  
Chosen Option : --

**Comprehension:**

निम्नलिखित गद्यांश में से कुछ शब्द हटा दिए गए हैं। दिए गए विकल्पों की सहायता से रिक्त स्थानों की पूर्ति कीजिए। प्रत्येक संख्या के लिए उपयुक्त विकल्प का चयन कीजिए।

पहले पूरा संसार एक परिवार के 1. \_\_\_\_\_ था अब टुकड़ों में बँटकर एक-दूसरे 2. \_\_\_\_\_ दूर हो चुका है। पहले बड़े-बड़े दालानों-आँगनों में सब 3. \_\_\_\_\_ रहते थे 4. \_\_\_\_\_ छोटे-छोटे डिब्बे जैसे घरों में जीवन सिमटने 5. \_\_\_\_\_ है।

**SubQuestion No : 18**

Q.18 रिक्त स्थान 3 की पूर्ति के लिए सर्वाधिक उपयुक्त विकल्प का चयन कीजिए।

Ans  1. छिपकर

2. मिल-जुलकर

3. अलग

4. बँधकर

Question ID : 26433091285

Status : Not Answered

Chosen Option : --

**Comprehension:**

निम्नलिखित गद्यांश में से कुछ शब्द हटा दिए गए हैं। दिए गए विकल्पों की सहायता से रिक्त स्थानों की पूर्ति कीजिए। प्रत्येक संख्या के लिए उपयुक्त विकल्प का चयन कीजिए।

पहले पूरा संसार एक परिवार के 1. \_\_\_\_\_ था अब टुकड़ों में बँटकर एक-दूसरे 2. \_\_\_\_\_ दूर हो चुका है। पहले बड़े-बड़े दालानों-आँगनों में सब 3. \_\_\_\_\_ रहते थे 4. \_\_\_\_\_ छोटे-छोटे डिब्बे जैसे घरों में जीवन सिमटने 5. \_\_\_\_\_ है।

**SubQuestion No : 19**

Q.19 रिक्त स्थान 4 की पूर्ति के लिए सर्वाधिक उपयुक्त विकल्प का चयन कीजिए।

Ans  1. सभी

2. जब

3. अब

4. सब

Question ID : 26433091286

Status : Not Answered

Chosen Option : --

**Comprehension:**

निम्नलिखित गद्यांश में से कुछ शब्द हटा दिए गए हैं। दिए गए विकल्पों की सहायता से रिक्त स्थानों की पूर्ति कीजिए। प्रत्येक संख्या के लिए उपयुक्त विकल्प का चयन कीजिए।

पहले पूरा संसार एक परिवार के 1. \_\_\_\_\_ था अब टुकड़ों में बँटकर एक-दूसरे 2. \_\_\_\_\_ दूर हो चुका है। पहले बड़े-बड़े दालानों-आँगनों में सब 3. \_\_\_\_\_ रहते थे 4. \_\_\_\_\_ छोटे-छोटे डिब्बे जैसे घरों में जीवन सिमटने 5. \_\_\_\_\_ है।

**SubQuestion No : 20**

**Q.20** रिक्त स्थान 5 की पूर्ति के लिए सर्वाधिक उपयुक्त विकल्प का चयन कीजिए।

- Ans**
- 1. लगी
  - 2. लगता
  - 3. लगा
  - 4. जुड़ा

Question ID : 26433091287

Status : Not Answered

Chosen Option : --

KD Job Updates

# Constable GD in CAPFs SSF Rifleman GD in Assam Rifles and Sepoy in NCB Examination 2022

Roll Number	KD Job Updates
Candidate Name	KD Job Updates
Venue Name	iON Digital Zone iDZ Sivathapuram
Exam Date	25/01/2023
Exam Time	11:45 AM - 12:45 PM
Subject	Constable GD Examination 2022

## Section : Part-A-General Intelligence and Reasoning

**Q.1** Six students Jason, Tushar, Anand, Stacey, Steven and Max are sitting around a circular table facing the centre. Jason is sitting third to the right of Tushar. Anand is sitting second to the left of Jason. Steven is an immediate neighbour of Anand and Jason. Max is sitting to the immediate right of Jason. Stacey is to the immediate left of Tushar. Who is sitting between Max and Steven?

- Ans
- 1. Stacey
  - 2. Jason
  - 3. Tushar
  - 4. Anand

Question ID : 26433081785  
Status : Answered  
Chosen Option : 2

**Q.2** Which of the following numbers will replace the question marks (?) in the given series?  
31, 33, 36, 41, 48, ?, ?

- Ans
- 1. 60, 74
  - 2. 64, 78
  - 3. 70, 82
  - 4. 59, 72

Question ID : 26433070222  
Status : Answered  
Chosen Option : 4

**Q.3** In a certain code language, 'FLY' is coded as 43 and 'HAT' is coded as 29. How will 'BEACH' be coded in that language?

- Ans
- 1. 19
  - 2. 39
  - 3. 22
  - 4. 40

Question ID : 26433074517  
Status : Answered  
Chosen Option : 1

Q.4 Select the correct mirror image of the given combination when the mirror is placed at 'PQ' as shown below.

(%E^VGHSW 

- Ans
- 1. WZHGV^E\0(
  - 2. WZHGV^E\0(
  - 3. WZHGVvE\0(
  - 4. MZHGV^E\0(

Question ID : 26433082745

Status : Answered

Chosen Option : 2

Q.5 A, B, C, D, E, F, G and H are sitting around a square table facing the centre of the table. Some of them are sitting at the corners while some are sitting at the exact centre of the sides. E sits third to the left of G. E sits at one of the corners. B sits second to the right of F. F does not sit at any of the corners. F is not an immediate neighbour of E. H is an immediate neighbour of A. H does not sit in any of the middles of the sides. Only three people sit between H and C from either sides. If all the persons are made to sit in alphabetical order in a clockwise direction starting from A, then how many places does B shift in either direction with respect to its previous position?

- Ans
- 1. 2
  - 2. 3
  - 3. 1
  - 4. 4

Question ID : 26433069666

Status : Answered

Chosen Option : 3

Q.6 'Near' is related to 'Close' in the same way as 'Distant' is related to '\_\_\_\_\_'. (The words must be considered as meaningful English words and must not be related to each other based on the number of letters/number of consonants/vowels in the word)

- Ans
- 1. Beside
  - 2. Run
  - 3. Away
  - 4. Compass

Question ID : 26433057751

Status : Answered

Chosen Option : 3

Q.7 Which of the following numbers will replace the question mark (?) in the given series?  
10, 0, 20, 10, 30, 20, 40, 30, ?

Ans  1. 50

2. 20

3. 40

4. 70

Question ID : 26433069044

Status : Answered

Chosen Option : 1

Q.8 Two different positions of the same dice are shown having numbers 1 to 6 represented as dots. Find the number on the face opposite the face showing '1'.



Ans  1. 6

2. 4

3. 3

4. 2

Question ID : 26433085507

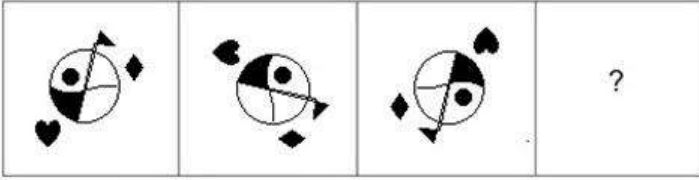
Status : Answered

Chosen Option : 1

KD Job Updates

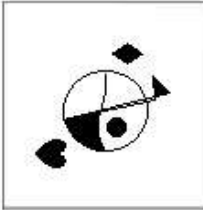


Q.9 Select the figure that will replace the question mark (?) in the following figure series.

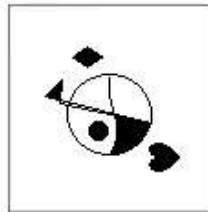


Ans

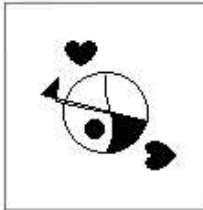
✗ 1.



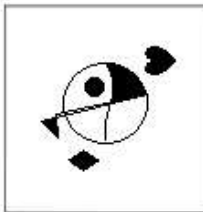
✓ 2.



✗ 3.



✗ 4.



KD Job Updates

Question ID : 26433070423

Status : Answered

Chosen Option : 2

**Q.10** Three statements are given followed by three conclusions numbered I, II and III. Assuming the statements to be true, even if they seem to be at variance with commonly known facts, decide which of the conclusions logically follow(s) from the statements.

**Statements:**

All chocolates are biscuits.

All chips are biscuits.

All biscuits are potatoes.

**Conclusions:**

I. All chips are potatoes.

II. All potatoes are chocolates.

III. Some potatoes are chips.

- Ans**
- 1. Only conclusions I and II follow
  - 2. All conclusions follow
  - 3. Only conclusions II and III follow
  - 4. Only conclusions I and III follow

Question ID : 26433082300

Status : Answered

Chosen Option : 4

**Q.11** Select the option that is related to the third word in the same way as the second word is related to the first word.

(The words must be considered as meaningful English words and must not be related to each other based on the number of letters/number of consonants/vowels in the word)

Extra : inadequate :: Appear : ?

- Ans**
- 1. Melt
  - 2. People
  - 3. Disappear
  - 4. Sink

Question ID : 26433079476

Status : Answered

Chosen Option : 3

**Q.12** Select the option that is related to the third number in the same way as the second number is related to the first number and the sixth number is related to the fifth number.

27 : 189 :: 32 : ? :: 18 : 126

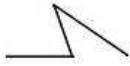
- Ans**
- 1. 236
  - 2. 220
  - 3. 238
  - 4. 224

Question ID : 26433067937

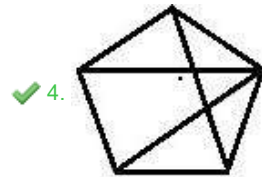
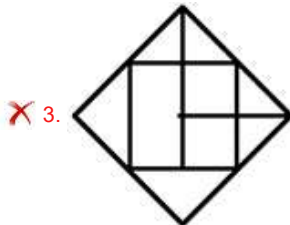
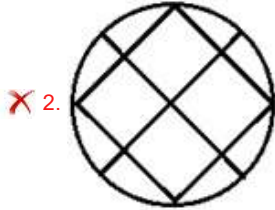
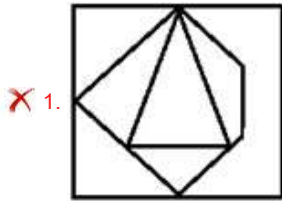
Status : Answered

Chosen Option : 4

Q.13 Select the option figure in which the given figure is embedded as its part (rotation is not allowed).



Ans



Question ID : 26433069538

Status : Answered

Chosen Option : 4

Q.14 Select the letter-cluster from among the given options that can replace the question mark (?) in the following series.  
FYBL, CVFP, ZSJT, ?, TMRB

Ans ✗ 1. NTPS

✓ 2. WPNX

✗ 3. WLXP

✗ 4. NKEC

Question ID : 26433074754

Status : Answered

Chosen Option : 2

Q.15 Which option represents the correct order of the given words as they would appear in the English dictionary?

- 1 Ranked
- 2 Ragging
- 3 Rack
- 4 Rainbow
- 5 Radar

Ans  1. 3,5,2,4,1

2. 3,5,2,1,4

3. 3,4,2,5,1

4. 3,4,2,1,5

Question ID : 26433069266

Status : Answered

Chosen Option : 1

Q.16 Which of the following letter-clusters will replace the question mark (?) and complete the following letter-cluster series?  
GS, EU, AW, UY, MA, ?

Ans  1. BC

2. DC

3. CC

4. CB

Question ID : 26433067280

Status : Answered

Chosen Option : 3

Q.17 If 'A' means 'subtraction', 'B' means 'division', 'C' means 'multiplication', and 'D' means 'addition', then what will be the value of following expression?  
8 A 80 B 16 C 90 D 21

Ans  1. -463

2. -421

3. 463

4. 421

Question ID : 264330114178

Status : Answered

Chosen Option : 2

Q.18 In a code language, 'She will come' is written as 'vu de ja', 'Come and eat' is written as 'te vu ma', 'all will eat' is written as 'ma nu ja'. What is the code for the word 'all' in that language?

Ans  1. te

2. nu

3. ma

4. ja

Question ID : 26433068932

Status : Answered

Chosen Option : 2

Q.19 Which of the mathematical signs should be interchanged in the below equation to make it mathematically correct?

$$192 - 16 + 18 \times 6 \div 24 = 96$$

- Ans
- 1. - and +
  - 2. - and  $\times$
  - 3. - and  $\div$
  - 4.  $\times$  and  $\div$

Question ID : 264330117526  
Status : Answered  
Chosen Option : 3

Q.20 In a certain code language,  
'A + B' means 'A is the mother of B',  
'A - B' means 'A is the father of B',  
'A x B' means 'A is the brother of B' and  
'A & B' means 'A is the daughter of B'.  
How is N related to V if N x L - T & G + V?

- Ans
- 1. Father's father
  - 2. Father
  - 3. Brother
  - 4. Father's brother

Question ID : 26433070373  
Status : Answered  
Chosen Option : 4

Section : Part-B-General Knowledge and General awareness

Q.1 The SEVA app was launched by which of the following ministers to track coal dispatch?

- Ans
- 1. Ramvilas Paswan
  - 2. Nitin Gadkari
  - 3. Piyush Goyal
  - 4. Suresh Prabhu

Question ID : 264330115016  
Status : Not Answered  
Chosen Option : --

Q.2 Which among the following Vedas is the oldest?

- Ans
- 1. Sama
  - 2. Rig
  - 3. Atharva
  - 4. Yajur

Question ID : 264330115443  
Status : Answered  
Chosen Option : 2

Q.3 \_\_\_\_\_ was introduced during fifth five year plan.

Ans  1. Minimum Needs Programme

2. Day School

3. Beti Bachao

4. Swachh Bharat

Question ID : 264330115363  
Status : Answered  
Chosen Option : 3

Q.4 SME stands for small and \_\_\_\_\_ enterprises.

Ans  1. medium-sized

2. manufacturing

3. modern-sized

4. mid -term

Question ID : 264330115313  
Status : Answered  
Chosen Option : 1

Q.5 Which of the following was the first BCCI president?

Ans  1. RE Grant Govan

2. Anthony D'Mello

3. Roger Binny

4. JC Mukherjee

Question ID : 264330116264  
Status : Answered  
Chosen Option : 2

Q.6 As of November 2022, who among the following is the Governor of Andhra Pradesh, India?

Ans  1. Anusuiya Uikey

2. Bhagat Singh Koshyari

3. Biswabhusan Harichandan

4. Hemant Soren

Question ID : 264330114897  
Status : Answered  
Chosen Option : 3

Q.7 The maximum inflation in India was recorded in the year \_\_\_\_\_ at 25.2 per cent was mainly attributed to the failure of kharif crops in the previous year and also to the hike in crude oil prices in the previous year.

- Ans  1. 1974-75  
 2. 2019-20  
 3. 2015-16  
 4. 1998-99

Question ID : 264330116145  
Status : Answered  
Chosen Option : 4

Q.8 Raut Nacha, Panthi and Soowa are famous dance styles of which of the following states?

- Ans  1. Jharkhand  
 2. Rajasthan  
 3. Chhattisgarh  
 4. Gujarat

Question ID : 26433071451  
Status : Answered  
Chosen Option : 3

Q.9 The age of the subscriber under Atal Pension Yojana (APY) should be between\_\_\_\_\_.

- Ans  1. 18-40 years  
 2. 40-60 years  
 3. 15-30 years  
 4. 25-50 years

Question ID : 264330116196  
Status : Answered  
Chosen Option : 1

Q.10 What is the emerging magma from a volcano onto the earth's surface called?

- Ans  1. Ash  
 2. Lava  
 3. Pyroclastics flows  
 4. Falls

Question ID : 264330115996  
Status : Answered  
Chosen Option : 2

Q.11 Which Constitutional Amendment introduced the fundamental Duties?

- Ans
- 1. 44th
  - 2. 41st
  - 3. 43rd
  - 4. 42nd

Question ID : 264330115631  
Status : Answered  
Chosen Option : 3

Q.12 In 2015, MN Subramaniam Endowment Award - The Music Academy Madras was awarded to \_\_\_\_\_.

- Ans
- 1. Anuradha Pandey
  - 2. Krishna Ella
  - 3. Mahaboob Subhani
  - 4. Alarmel Valli

Question ID : 264330115850  
Status : Answered  
Chosen Option : 1

Q.13 The celebrations for Paryushan Parv is held for \_\_\_\_ days by the Digambara sect of Jains.

- Ans
- 1. 16
  - 2. 12
  - 3. 14
  - 4. 10

Question ID : 264330115083  
Status : Not Answered  
Chosen Option : --

Q.14 \_\_\_\_\_ is an indicator used by experts to gauge the number of people dying prematurely due to a particular disease.

- Ans
- 1. gross national product
  - 2. goods and service tax
  - 3. gross domestic diseases
  - 4. global burden of diseases

Question ID : 264330115560  
Status : Answered  
Chosen Option : 3



Q.15 How many High Courts are there in India as of 2022?

- Ans  1. 22  
 2. 25  
 3. 23  
 4. 20

Question ID : 264330115667  
Status : Answered  
Chosen Option : 2

Q.16 When was the Harijan Sewak Sangh founded as a result of the Poona Pact?

- Ans  1. 1938  
 2. 1932  
 3. 1936  
 4. 1940

Question ID : 26433089892  
Status : Not Answered  
Chosen Option : --

Q.17 The Avogadro's number is  $6.022 \times 10^{\quad}$

- Ans  1.  $10^{22}$   
 2.  $10^{24}$   
 3.  $10^{25}$   
 4.  $10^{23}$

Question ID : 264330115145  
Status : Answered  
Chosen Option : 2

Q.18 Who was the flag bearer for India for the closing ceremony of the Asian Games 2018?

- Ans  1. Sanjeev Rajput  
 2. Deepak Kumar  
 3. Neeraj Chopra  
 4. Rani Rampal

Question ID : 264330115912  
Status : Not Answered  
Chosen Option : --

Q.19 In which of the following union territories was the highest literacy rate recorded in 2011?

- Ans  1. Daman and Diu  
 2. Andaman and Nicobar  
 3. Puducherry  
 4. Lakshadweep

Question ID : 264330116059  
Status : Answered  
Chosen Option : 4

Q.20 Where will you find plastids in a leaf cell?

- Ans  1. cell wall  
 2. cytoplasm  
 3. nucleus  
 4. cell membrane

Question ID : 264330115192  
Status : Answered  
Chosen Option : 2

Section : Part-C-Elementary Mathematics

Q.1 Jiya gets a discount of 30 percent and 10 percent on a bill. The total discount she got is:

- Ans  1. 39 percent  
 2. 37 percent  
 3. 40 percent  
 4. 35 percent

Question ID : 264330116765  
Status : Answered  
Chosen Option : 2

Q.2 The cost price of 2 pens and 3 notebooks is ₹220 and the cost price of 2 pens and 4 notebooks is ₹250. Find the ratio between the cost price of the pen and the notebook.

- Ans  1. 5 : 13  
 2. 1 : 2  
 3. 13 : 6  
 4. 5 : 12

Question ID : 26433076411  
Status : Answered  
Chosen Option : 3

Q.3 The least number which should be added to 1845 to make it divisible by 3, 4, 5 and 6 is:

- Ans  1. 12  
 2. 15  
 3. 3  
 4. 9

Question ID : 26433082347  
Status : Answered  
Chosen Option : 2

Q.4 A person can row 66 km downstream in 6 h and 72 km upstream in 8 h. What is the speed of the current?

- Ans
- 1. 4 km/h
  - 2. 2 km/h
  - 3. 3 km/h
  - 4. 1 km/h

Question ID : 26433064924  
Status : Answered  
Chosen Option : 4

Q.5 Sonal, Kriti, and Priti together can complete a piece of work in 6 days while Kriti and Priti can do the same work separately in 30 and 18 days, then in how many days Sonal alone can do the same work?

- Ans
- 1.  $88/7$  days
  - 2.  $14/5$  days
  - 3.  $90/7$  days
  - 4.  $66/5$  days

Question ID : 264330116880  
Status : Answered  
Chosen Option : 3

Q.6 In a particular year the average monthly expenditure of Vipin was ₹6,250 during the first 4 months, ₹6,500 during the next 4 months, and ₹x during the remaining months of the year. If the total savings in the year was ₹15,000 and his monthly salary is ₹9,600, then find the value of x.

- Ans
- 1. ₹12,750
  - 2. ₹12,000
  - 3. ₹12,300
  - 4. ₹13,000

Question ID : 26433079911  
Status : Answered  
Chosen Option : 3

Q.7 The marked price of a general study book is Rs.800. If it is sold at 15% and 20% successive discounts, then find its selling price.

- Ans
- 1. Rs.544
  - 2. Rs.534
  - 3. Rs.528
  - 4. Rs.520

Question ID : 26433082973  
Status : Answered  
Chosen Option : 1

Q.8 The volume of a hemisphere is 32 times the volume of a sphere with radius 3 units. the diameter of the hemisphere is \_\_\_\_\_ units.

- Ans
- 1. 6
  - 2. 24
  - 3. 18
  - 4. 12

Question ID : 26433071268  
Status : Answered  
Chosen Option : 2

Q.9 A sum of money is paid back in two annual instalments of Rs.1,25,000 each. If rate of interest is 6% per annum and interest is compounding annually, then find the sum borrowed.(Consider round up integral value)

- Ans
- 1. Rs.1,50,375
  - 2. Rs.2,39,174
  - 3. Rs.2,29,174
  - 4. Rs.1,19,375

Question ID : 26433074995  
Status : Answered  
Chosen Option : 3

Q.10 A work can be finished by 10 men in 8 days and by 10 women in 7 days. In how many days will the work be finished if 10 women and 10 men work on alternate days, with the women starting on the first day?

- Ans
- 1.  $7\frac{3}{7}$
  - 2. 7.5
  - 3.  $7\frac{4}{7}$
  - 4.  $7\frac{3}{8}$

Question ID : 26433071266  
Status : Answered  
Chosen Option : 1

Q.11 A fruit vendor purchases oranges at Rs.150, Rs.90 and Rs.75 per kg. These oranges purchased at three different prices are mixed in the ratio 4 : 5 : 6 respectively, and are sold at a profit of 40%. Find the selling price (in Rs.) of oranges per kg.

- Ans
- 1. 160
  - 2. 150
  - 3. 140
  - 4. 210

Question ID : 26433075911  
Status : Answered  
Chosen Option : 3

Q.12 If the price of oil increases by 25 percent and Arpit increase the expenditure on oil by 10 percent, then by how much percent will he reduce the quantity of oil purchased?

- Ans
- 1. 22 percent
  - 2. 42 percent
  - 3. 12 percent
  - 4. 88 percent

Question ID : 264330116800  
Status : Answered  
Chosen Option : 3

Q.13 In a trapezium, the lengths of opposite parallel sides are 12 cm and 8 cm respectively, and the shortest distance between them is 16 cm, Find the area of the trapezium.

- Ans
- 1.  $84.5 \text{ cm}^2$
  - 2.  $144 \text{ cm}^2$
  - 3.  $62.5 \text{ cm}^2$
  - 4.  $160 \text{ cm}^2$

Question ID : 26433079972  
Status : Answered  
Chosen Option : 4

Q.14 In an election Santosh got 24000 more votes than Mantosh. If Mantosh and Santosh got 30% and 40% of the total votes respectively. Find the total number of votes cast.

- Ans
- 1. 250000
  - 2. 254000
  - 3. 240000
  - 4. 245000

Question ID : 26433080159  
Status : Answered  
Chosen Option : 3

Q.15 A shopkeeper bought 240 chocolates at ₹9 per dozen. If he sold all of them at ₹1 each, what was his profit percentage?

- Ans
- 1. 24%
  - 2. 27%
  - 3.  $33\frac{1}{3}\%$
  - 4.  $66\frac{1}{6}\%$

Question ID : 26433082094  
Status : Answered  
Chosen Option : 3

**Q.16** Students' strength of a co-educational School is 3,000. If the ratio of the number of boys to the number of girls in the school is 4 : 1, then what is the mean proportion of the number of boys and girls in the School, given that only boys and girls are students in the school?

- Ans
- 1. 1300
  - 2. 1400
  - 3. 1100
  - 4. 1200

Question ID : 26433090252  
Status : Answered  
Chosen Option : 4

**Q.17** If a natural number when divided by 5,6 and 7 leaves a remainder 4 in each case,then what is the smallest possible three digit natural number?

- Ans
- 1. 218
  - 2. 214
  - 3. 212
  - 4. 216

Question ID : 26433075636  
Status : Answered  
Chosen Option : 2

**Q.18** An aeroplane covers a certain distance at a speed 510 km/h in 3 h. To cover the same distance in  $10\frac{1}{5}$  h, it must fly at a speed of:

- Ans
- 1. 150 km/h
  - 2. 250 km/h
  - 3. 305 km/h
  - 4. 230 km/h

Question ID : 26433080046  
Status : Answered  
Chosen Option : 1

**Q.19** The average of 8 numbers is 24. If one of the numbers is excluded, the average becomes 22. Find the excluded number.

- Ans
- 1. 38
  - 2. 36
  - 3. 37
  - 4. 35

Question ID : 26433075462  
Status : Answered  
Chosen Option : 1

Q.20 What is the difference between the compound interest, compounding annually and simple interest on ₹8,300 at 10% per annum for 2 years?

- Ans  1. ₹83  
 2. ₹1,743  
 3. ₹1,660  
 4. ₹38

Question ID : 26433066057  
Status : Answered  
Chosen Option : 1

Section : Part-D-English

Q.1 Select the most appropriate ANTONYM of the underlined word.

The authority tries to subjugate the marginalised people.

- Ans  1. subordinate  
 2. liberate  
 3. enslave  
 4. trap

Question ID : 26433093937  
Status : Answered  
Chosen Option : 2

Q.2 Choose the option that can substitute the underlined segment correctly and complete the meaning of the sentence.

The grandmother asked Rita to close the window as she suddenly started feeling extremely cold.

- Ans  1. Freezing  
 2. Frosting  
 3. Icing  
 4. Cold

Question ID : 26433088879  
Status : Not Answered  
Chosen Option : --

Q.3 Select the most appropriate meaning of the given idiom.  
Throw caution to the wind

- Ans  1. Carefree  
 2. Careful  
 3. Be cautious  
 4. Ignore the risk

Question ID : 26433070803  
Status : Answered  
Chosen Option : 3

Q.4 Select the most appropriate ANTONYM of the given word.

Hasty

- Ans  1. Cautious  
 2. Reckless  
 3. Brisk  
 4. Quick

Question ID : 26433072668  
Status : Answered  
Chosen Option : 2

Q.5 Select the option that expresses the given sentence in simple past tense.

- A. Last year, I have travelled to Japan.  
B. Last year, I was travelling to Japan.  
C. Last year, I travelled to Japan.  
D. Last year, I had been travelling to Japan.

- Ans  1. A  
 2. B  
 3. C  
 4. D

Question ID : 26433073520  
Status : Answered  
Chosen Option : 3

Q.6 Select the most appropriate ANTONYM of the given word.

Celebrate

- Ans  1. Disgrace  
 2. Manipulate  
 3. Instigate  
 4. Tabulate

Question ID : 26433073803  
Status : Answered  
Chosen Option : 1

Q.7 Select the most appropriate option to fill in the blank.

The moon looks bright and beautiful in the cloudless night sky. Yet it is very small compared \_\_\_\_\_ Earth.

- Ans  1. with  
 2. than  
 3. to  
 4. in

Question ID : 26433072726  
Status : Answered  
Chosen Option : 3



Q.8 Select the most appropriate option that can substitute the underlined segment in the given sentence.

This blue shirt you have wearing really looks expensive.

- Ans  1. has wear  
 2. are wearing  
 3. will wearing  
 4. had wear

Question ID : 26433096155  
Status : Answered  
Chosen Option : 2

Q.9 Select the most appropriate synonym of the given word.

Beautiful

- Ans  1. Dull  
 2. Drab  
 3. Pretty  
 4. Homely

Question ID : 26433072532  
Status : Answered  
Chosen Option : 3

Q.10 Select the most appropriate synonym of the given word to fill in the blank in the sentence.

Casual

Sita wore a \_\_\_\_\_ yet stunning dress at the birthday party of her son.

- Ans  1. temporary  
 2. formal  
 3. regular  
 4. uniform

Question ID : 26433060549  
Status : Answered  
Chosen Option : 2

Q.11 A part of the given sentence which has been underlined may contain a spelling error. Select the option that correctly rectifies the spelling error. If there is no error, select 'No error'.

Technology has become an indispensable element in our day-to-day activities.

- Ans  1. Endispensible  
 2. Indispensible  
 3. Indispinsable  
 4. No error

Question ID : 26433071787  
Status : Answered  
Chosen Option : 2

Q.12 Select the INCORRECTLY spelt word.

- Ans  1. Appearanse  
 2. Appropriate  
 3. Apparatus  
 4. Appreciate

Question ID : 26433073927  
Status : Answered  
Chosen Option : 1

Q.13 Select the most appropriate meaning of the italicised idiom in the given sentence.  
“*Hold your horses !*” said Mom as I reached for a cookie. “They are still too hot to eat.”

- Ans  1. Be patient  
 2. Be in a rage  
 3. Be docile  
 4. Be in a hurry

Question ID : 264330101305  
Status : Answered  
Chosen Option : 1

Q.14 Select the most appropriate ANTONYM of the word given in the brackets to fill in the blank and complete the sentence.

The water was too \_\_\_\_\_ (profound) to take a swim.

- Ans  1. shallow  
 2. dangerous  
 3. hot  
 4. turbid

Question ID : 26433089839  
Status : Answered  
Chosen Option : 2

Q.15 Select the most appropriate synonym of the given word.

Heyday

- Ans  1. Yesteryears  
 2. Dreamy  
 3. Prime  
 4. Fateful

Question ID : 26433073985  
Status : Answered  
Chosen Option : 2

**Comprehension:**

In the following passage, some words have been deleted. Read the passage carefully and select the most appropriate option to fill in each blank.

Residents of Victorian Street in Thornton (1)\_\_\_\_\_ disturbed last night by an unusual accident. At eleven o'clock a car broke down near the end of the street and the driver left his vehicle (2)\_\_\_\_\_ while he went on with his journey by taxi. An hour later, the car's alarm went off when it was hit (3)\_\_\_\_\_ a stolen van. The engine of the van blew up, so the thief tried to drive away in the car. But he gave up when the car would not (4)\_\_\_\_\_ and (5)\_\_\_\_\_ a bicycle instead.

**SubQuestion No : 16**

**Q.16 Select the most appropriate option to fill in blank number 1.**

- Ans  1. is  
 2. were  
 3. are  
 4. was

Question ID : 26433060287  
Status : Answered  
Chosen Option : 2

**Comprehension:**

In the following passage, some words have been deleted. Read the passage carefully and select the most appropriate option to fill in each blank.

Residents of Victorian Street in Thornton (1)\_\_\_\_\_ disturbed last night by an unusual accident. At eleven o'clock a car broke down near the end of the street and the driver left his vehicle (2)\_\_\_\_\_ while he went on with his journey by taxi. An hour later, the car's alarm went off when it was hit (3)\_\_\_\_\_ a stolen van. The engine of the van blew up, so the thief tried to drive away in the car. But he gave up when the car would not (4)\_\_\_\_\_ and (5)\_\_\_\_\_ a bicycle instead.

**SubQuestion No : 17**

**Q.17 Select the most appropriate option to fill in blank number 2.**

- Ans  1. then  
 2. here  
 3. there  
 4. their

Question ID : 26433060288  
Status : Answered  
Chosen Option : 3

**Comprehension:**

In the following passage, some words have been deleted. Read the passage carefully and select the most appropriate option to fill in each blank.

Residents of Victorian Street in Thornton (1)\_\_\_\_\_ disturbed last night by an unusual accident. At eleven o'clock a car broke down near the end of the street and the driver left his vehicle (2)\_\_\_\_\_ while he went on with his journey by taxi. An hour later, the car's alarm went off when it was hit (3)\_\_\_\_\_ a stolen van. The engine of the van blew up, so the thief tried to drive away in the car. But he gave up when the car would not (4)\_\_\_\_\_ and (5)\_\_\_\_\_ a bicycle instead.

**SubQuestion No : 18**

**Q.18 Select the most appropriate option to fill in blank number 3.**

- Ans
- 1. on
  - 2. in
  - 3. by
  - 4. above

Question ID : 26433060289

Status : Answered

Chosen Option : 3

**Comprehension:**

In the following passage, some words have been deleted. Read the passage carefully and select the most appropriate option to fill in each blank.

Residents of Victorian Street in Thornton (1)\_\_\_\_\_ disturbed last night by an unusual accident. At eleven o'clock a car broke down near the end of the street and the driver left his vehicle (2)\_\_\_\_\_ while he went on with his journey by taxi. An hour later, the car's alarm went off when it was hit (3)\_\_\_\_\_ a stolen van. The engine of the van blew up, so the thief tried to drive away in the car. But he gave up when the car would not (4)\_\_\_\_\_ and (5)\_\_\_\_\_ a bicycle instead.

**SubQuestion No : 19**

**Q.19 Select the most appropriate option to fill in blank number 4.**

- Ans
- 1. started
  - 2. start
  - 3. starting
  - 4. starts

Question ID : 26433060290

Status : Answered

Chosen Option : 2

**Comprehension:**

In the following passage, some words have been deleted. Read the passage carefully and select the most appropriate option to fill in each blank.

Residents of Victorian Street in Thornton (1)\_\_\_\_\_ disturbed last night by an unusual accident. At eleven o'clock a car broke down near the end of the street and the driver left his vehicle (2)\_\_\_\_\_ while he went on with his journey by taxi. An hour later, the car's alarm went off when it was hit (3)\_\_\_\_\_ a stolen van. The engine of the van blew up, so the thief tried to drive away in the car. But he gave up when the car would not (4)\_\_\_\_\_ and (5)\_\_\_\_\_ a bicycle instead.

**SubQuestion No : 20**

**Q.20** Select the most appropriate option to fill in blank number 5.

- Ans  1. parked  
 2. stole  
 3. bought  
 4. lent

Question ID : 26433060291  
Status : Answered  
Chosen Option : 2

## Section : Part-D-Hindi

**Q.1** निम्नलिखित में से क्या 'इंगित' का क्या अर्थ नहीं होता है?

- Ans  1. संकेत  
 2. अवस्था  
 3. इशारा  
 4. अभिप्राय

Question ID : 26433080946  
Status : Not Answered  
Chosen Option : --

**Q.2** 'शव' के अर्थ से निम्न वाक्य की पूर्ति कीजिए।  
शमशानघाट में शव को \_\_\_\_\_ दस बजे पहुँचाया गया।

- Ans  1. दिन  
 2. दोपहर  
 3. सुबह  
 4. रात

Question ID : 26433079237  
Status : Not Answered  
Chosen Option : --

Q.3 निम्नलिखित विकल्पों में से 'जो अपने मत का अनुयायी हो' वाक्यांश के लिए एक सार्थक शब्द क्या होगा ?

- Ans  1. स्वाभिमान  
 2. आत्माभिमत  
 3. परिवेश  
 4. आलोचक

Question ID : 26433062468  
Status : Not Answered  
Chosen Option : --

Q.4 निम्न में से कौन सा वाक्य क्रिया विशेषण का उदाहरण नहीं है?

- Ans  1. आज तेज़ बारिश होगी।  
 2. अब उठ भी जाओ।  
 3. तुम्हें कम बोलना चाहिए।  
 4. वह धीरे-धीरे चलता है।

Question ID : 26433063050  
Status : Not Answered  
Chosen Option : --

Q.5 निम्न वाक्यांश के लिए एक शब्द क्या होगा?  
जिसका दूसरा उपाय न हो

- Ans  1. अन्यतम  
 2. अनन्योपाय  
 3. अन्यग  
 4. अन्योन्य

Question ID : 26433070063  
Status : Not Answered  
Chosen Option : --

Q.6 'मेरे पास एक बहुत लंबी खड़ी है।' इस वाक्य में अशुद्ध शब्द का प्रयोग पहचानिए।

- Ans  1. लंबी-सी  
 2. बहुत  
 3. एक  
 4. खड़ी

Question ID : 26433085060  
Status : Not Answered  
Chosen Option : --

Q.7 बलराम विनय का ज्येष्ठ भाई है।  
उपरोक्त वाक्य में रेखांकित शब्द के विलोम शब्द का चयन कीजिए।

- Ans  1. कनिष्ठ  
 2. प्रिय  
 3. घनिष्ठ  
 4. बड़ा

Question ID : 26433079638  
Status : Not Answered  
Chosen Option : --

Q.8 निम्नलिखित वाक्य में रेखांकित खंड के स्थान पर प्रयुक्त होने वाले सबसे उपयुक्त विकल्प का चयन कीजिए।  
आज से यह नियम चालू है।

- Ans  1. लागू  
 2. पीछे  
 3. आगे  
 4. ऊपर

Question ID : 26433079564  
Status : Not Answered  
Chosen Option : --

Q.9 'उल्टा चोर कोतवाल को डांटे' मुहावरे का सही अर्थ क्या है?

- Ans  1. चोर को सजा देना  
 2. छोटों को धमकाना  
 3. स्वयं दोषी होते हुए भी निर्दोष को धमकाना  
 4. बड़े व्यक्ति में दोष होना

Question ID : 26433062605  
Status : Not Answered  
Chosen Option : --

Q.10 'फल देने वाला' वाक्यांश के लिए इनमें से उपयुक्त शब्द कौन-सा है?

- Ans  1. फलदार  
 2. फलाहारी  
 3. फलहरी  
 4. फलदायी

Question ID : 26433066891  
Status : Not Answered  
Chosen Option : --

Q.11 विष्णु जी को माधव के नाम से पुकारो या \_\_\_\_\_ के नाम से वह हमेशा सुनते हैं।  
'विष्णु' के पर्याय से उपरोक्त वाक्य पूर्ण कीजिए।

- Ans  1. जनार्दन  
 2. अमर  
 3. ईश्वर  
 4. गिरीश

Question ID : 26433084983  
Status : Not Answered  
Chosen Option : --

Q.12 'आप इस पत्र पर हस्ताक्षर बना दीजिए।' इस वाक्य में अनुपयुक्त शब्द क्या है?

- Ans  1. पत्र  
 2. बना  
 3. हस्ताक्षर  
 4. इस

Question ID : 26433091304  
Status : Not Answered  
Chosen Option : --

Q.13 निम्नलिखित मुहावरे के उचित अर्थ का चयन कीजिए-  
टांग अड़ाना

- Ans  1. उन्नति न करना  
 2. लँगड़ी मारना  
 3. अड़चन डालना  
 4. चापलूसी करना

Question ID : 26433065884  
Status : Not Answered  
Chosen Option : --

Q.14 निम्न वाक्य में त्रुटि पहचानिए।  
लड़कियों में सहनशीलता पाई जाती हैं।

- Ans  1. लड़कियों में  
 2. सहनशीलता  
 3. लड़कियों, हैं  
 4. पाई जाती है

Question ID : 26433063038  
Status : Not Answered  
Chosen Option : --



Q.15 'एकमात्र दो उपाय हैं।' रेखांकित शब्द के स्थान पर उपयुक्त शब्द क्या होगा?

- Ans  1. क्या  
 2. केवल  
 3. दोमात्र  
 4. कुछ

Question ID : 26433062205

Status : Not Answered

Chosen Option : --

**Comprehension:**

निम्नलिखित गद्यांश में कुछ शब्दों को हटा दिया गया है। दिए गए विकल्पों की सहायता से रिक्त स्थानों की पूर्ति कीजिए। प्रत्येक संख्या के लिए सबसे उपयुक्त विकल्प का चयन कीजिए।

1. \_\_\_\_\_ पर चलना अत्यंत कठिन है। इस पर चलने वाले को कठिनाइयां भले ही आएँ, किन्तु वह 2. \_\_\_\_\_ नहीं है। जो लोग कठिनता देखकर 3. \_\_\_\_\_ हो जाते हैं, वे जल्दी ही अपना मार्ग बदल लेते हैं। मार्ग बदलने का अर्थ है कि वे असत्य की ओर बढ़ जाते हैं। इस प्रकार वे 4. \_\_\_\_\_ हो जाते हैं। इससे जीवन का 5. \_\_\_\_\_ ही नष्ट हो जाता है। ऐसा जीवन असफल हो जाता है।

SubQuestion No : 16

Q.16 रिक्त स्थान 1 की पूर्ति के लिए सबसे उपयुक्त विकल्प का चयन करें।

- Ans  1. सत्य के मार्ग  
 2. प्रवंचना के मार्ग  
 3. अनीति के मार्ग  
 4. मिथ्या के मार्ग

Question ID : 264330110879

Status : Not Answered

Chosen Option : --

**Comprehension:**

निम्नलिखित गद्यांश में कुछ शब्दों को हटा दिया गया है। दिए गए विकल्पों की सहायता से रिक्त स्थानों की पूर्ति कीजिए। प्रत्येक संख्या के लिए सबसे उपयुक्त विकल्प का चयन कीजिए।

1. \_\_\_\_\_ पर चलना अत्यंत कठिन है। इस पर चलने वाले को कठिनाइयां भले ही आएँ, किन्तु वह 2. \_\_\_\_\_ नहीं है। जो लोग कठिनता देखकर 3. \_\_\_\_\_ हो जाते हैं, वे जल्दी ही अपना मार्ग बदल लेते हैं। मार्ग बदलने का अर्थ है कि वे असत्य की ओर बढ़ जाते हैं। इस प्रकार वे 4. \_\_\_\_\_ हो जाते हैं। इससे जीवन का 5. \_\_\_\_\_ ही नष्ट हो जाता है। ऐसा जीवन असफल हो जाता है।

SubQuestion No : 17

Q.17 रिक्त स्थान 2 की पूर्ति के लिए सबसे उपयुक्त विकल्प का चयन करें।

- Ans  1. खोता  
 2. भटकता  
 3. सोता  
 4. पटकता

Question ID : 264330110880

Status : Not Answered

Chosen Option : --

**Comprehension:**

निम्नलिखित गद्यांश में कुछ शब्दों को हटा दिया गया है। दिए गए विकल्पों की सहायता से रिक्त स्थानों की पूर्ति कीजिए। प्रत्येक संख्या के लिए सबसे उपयुक्त विकल्प का चयन कीजिए।

1. \_\_\_\_\_ पर चलना अत्यंत कठिन है। इस पर चलने वाले को कठिनाइयां भले ही आएँ, किन्तु वह 2. \_\_\_\_\_ नहीं है। जो लोग कठिनता देखकर 3. \_\_\_\_\_ हो जाते हैं, वे जल्दी ही अपना मार्ग बदल लेते हैं। मार्ग बदलने का अर्थ है कि वे असत्य की ओर बढ़ जाते हैं। इस प्रकार वे 4. \_\_\_\_\_ हो जाते हैं। इससे जीवन का 5. \_\_\_\_\_ ही नष्ट हो जाता है। ऐसा जीवन असफल हो जाता है।

**SubQuestion No : 18**

Q.18 रिक्त स्थान 3 की पूर्ति के लिए सबसे उपयुक्त विकल्प का चयन करें।

- Ans
- 1. सजग
  - 2. कायर
  - 3. अविचलित
  - 4. विचलित

Question ID : 264330110881

Status : Not Answered

Chosen Option : --

**Comprehension:**

निम्नलिखित गद्यांश में कुछ शब्दों को हटा दिया गया है। दिए गए विकल्पों की सहायता से रिक्त स्थानों की पूर्ति कीजिए। प्रत्येक संख्या के लिए सबसे उपयुक्त विकल्प का चयन कीजिए।

1. \_\_\_\_\_ पर चलना अत्यंत कठिन है। इस पर चलने वाले को कठिनाइयां भले ही आएँ, किन्तु वह 2. \_\_\_\_\_ नहीं है। जो लोग कठिनता देखकर 3. \_\_\_\_\_ हो जाते हैं, वे जल्दी ही अपना मार्ग बदल लेते हैं। मार्ग बदलने का अर्थ है कि वे असत्य की ओर बढ़ जाते हैं। इस प्रकार वे 4. \_\_\_\_\_ हो जाते हैं। इससे जीवन का 5. \_\_\_\_\_ ही नष्ट हो जाता है। ऐसा जीवन असफल हो जाता है।

**SubQuestion No : 19**

Q.19 रिक्त स्थान 4 की पूर्ति के लिए सबसे उपयुक्त विकल्प का चयन करें।

- Ans
- 1. अनाश्रमी
  - 2. बुद्धिभ्रष्ट
  - 3. लूटमार
  - 4. पथभ्रष्ट

Question ID : 264330110882

Status : Not Answered

Chosen Option : --

**Comprehension:**

निम्नलिखित गद्यांश में कुछ शब्दों को हटा दिया गया है। दिए गए विकल्पों की सहायता से रिक्त स्थानों की पूर्ति कीजिए। प्रत्येक संख्या के लिए सबसे उपयुक्त विकल्प का चयन कीजिए।

1. \_\_\_\_\_ पर चलना अत्यंत कठिन है। इस पर चलने वाले को कठिनाइयां भले ही आएँ, किन्तु वह 2. \_\_\_\_\_ नहीं है। जो लोग कठिनता देखकर 3. \_\_\_\_\_ हो जाते हैं, वे जल्दी ही अपना मार्ग बदल लेते हैं। मार्ग बदलने का अर्थ है कि वे असत्य की ओर बढ़ जाते हैं। इस प्रकार वे 4. \_\_\_\_\_ हो जाते हैं। इससे जीवन का 5. \_\_\_\_\_ ही नष्ट हो जाता है। ऐसा जीवन असफल हो जाता है।

**SubQuestion No : 20**

**Q.20** रिक्त स्थान 5 की पूर्ति के लिए सबसे उपयुक्त विकल्प का चयन करें।

- Ans  1. निमित्त  
 2. अभिप्राय  
 3. मंशा  
 4. नियत

Question ID : 264330110883

Status : Not Answered

Chosen Option : --

KD Job Updates

# Constable GD in CAPFs SSF Rifleman GD in Assam Rifles and Sepoy in NCB Examination 2022

Roll Number	KD Job Updates
Candidate Name	KD Job Updates
Venue Name	iON Digital Zone iDZ Harahuwa Chauraha
Exam Date	25/01/2023
Exam Time	2:30 PM - 3:30 PM
Subject	Constable GD Examination 2022

Section : Part-A-General Intelligence and Reasoning

**Q.1** Select the option that is related to the fourth term in the same way as the first term is related to the second term and the fifth term is related to the sixth term.  
512 : 10 :: ? : 11 :: 1331 : 13

- Ans
- 1. 343
  - 2. 441
  - 3. 1000
  - 4. 729

Question ID : 26433074546  
Status : Answered  
Chosen Option : 4

**Q.2** Which of the following numbers will replace the question mark (?) in the given series?  
-1, 0, 3, 8, 15, ?

- Ans
- 1. 13
  - 2. 32
  - 3. 56
  - 4. 24

Question ID : 26433082739  
Status : Answered  
Chosen Option : 4

**Q.3** Three statements are given, followed by three conclusions numbered I, II and III. Assuming the statements to be true, even if they seem to be at variance with commonly known facts, decide which of the conclusions logically follow(s) from the statements.

**Statements:**

No ties are pants.  
All pants are shirts.  
All ties are shirts.

**Conclusions:**

I. Some shirts are ties.  
II. Some shirts are pants.  
III. Some ties are shirts.

- Ans**
- 1. All conclusions follow
  - 2. Only conclusion III follows
  - 3. Only conclusions I and III follow
  - 4. Only conclusions II and III follow

Question ID : 26433090994  
Status : Answered  
Chosen Option : 1

**Q.4** Select the option that is related to the third word in the same way as the second word is related to the first word. (The words must be considered as meaningful English words and must not be related to each other based on the number of letters/number of consonants/vowels in the word)


Car : Seat belt :: Fan : ?

- Ans**
- 1. Wind
  - 2. Room
  - 3. Blade
  - 4. Electricity

Question ID : 26433067974  
Status : Answered  
Chosen Option : 3

**Q.5** Select the correct mirror image of the given figure when the mirror is placed at MN as shown below.

PFX15n3G



- Ans**
- 1. ǝɥnɹɹɹɹɹɹɹ
  - 2. ǝɥnɹɹɹɹɹɹɹ
  - 3. Gɥnɹɹɹɹɹɹɹ
  - 4. ǝɥnɹɹɹɹɹɹɹ

Question ID : 26433089458  
Status : Answered  
Chosen Option : 4

Q.6 Which of the following numbers will replace the question mark (?) and complete the given number series?  
5, 293, 437, 509, ?

- Ans
- 1. 535
  - 2. 540
  - 3. 550
  - 4. 545

Question ID : 26433067859  
Status : Answered  
Chosen Option : 4

Q.7 In a certain code language, 'CRAZE' is written as 'DTDDJ', 'GLORY' is written as 'HNRVD', how will 'FAME' be written as in that language?

- Ans
- 1. GOPI
  - 2. IPCG
  - 3. GCPI
  - 4. GCIPI

Question ID : 26433069652  
Status : Answered  
Chosen Option : 3

Q.8 Select the option that is related to the fifth letter-cluster in the same way as the second letter-cluster is related to the first letter-cluster and the fourth letter-cluster is related to the third letter-cluster.

CAPTURE : PACERUT :: BANKING : NABGNIK :: CHARITY : ?

- Ans
- 1. AHCYTIR
  - 2. RAHCYTI
  - 3. YTIRAHC
  - 4. RITYCHA

Question ID : 26433069632  
Status : Answered  
Chosen Option : 1

Q.9 Select the option that represents the correct order of the given words as they would appear in an English dictionary.

1. RAY
2. RAVISH
3. RATIONAL
4. RATABLE
5. RASH
6. RAPTURE

- Ans
- 1. 4, 6, 5, 3, 2, 1
  - 2. 5, 6, 4, 3, 2, 1
  - 3. 6, 5, 4, 3, 2, 1
  - 4. 3, 6, 5, 4, 2, 1

Question ID : 26433079383  
Status : Answered  
Chosen Option : 3

Q.10 Select the correct combination of mathematical signs to sequentially replace the \* signs and to balance the given equation.  
 $720 * 24 * 4 * 100 * 40 * 20$

- Ans
- 1. ÷, ×, =, +, -
  - 2. -, +, ÷, ×, =
  - 3. +, =, ×, ÷, -
  - 4. ×, ÷, +, =, -

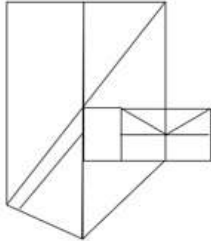
Question ID : 26433094988  
Status : Answered  
Chosen Option : 1

Q.11 Which of the following terms will replace the question mark (?) in the given series?  
XDZA, VFXC, ?, LPNM, DXFU

- Ans
- 1. SJTH
  - 2. SJIG
  - 3. RJTG
  - 4. RITH

Question ID : 26433068303  
Status : Answered  
Chosen Option : 3

Q.12 Select the option figure which is embedded in the given figure. (Rotation is NOT allowed)



Ans

- 1.
- 2.
- 3.
- 4.

Question ID : 26433069336  
Status : Answered  
Chosen Option : 2

Q.13 Seven friends M, N, O, P, Q, R and S are sitting on a straight bench facing towards east. P is sitting exactly at the middle position. Only four friends are sitting to the left of M. Only Q is sitting between R and S. O is sitting third to the right of S. Who is sitting at the second place from the right end?

- Ans
- 1. N
  - 2. M
  - 3. O
  - 4. R

Question ID : 26433079060  
Status : Answered  
Chosen Option : 3

Q.14 In a certain code language, 'GOLDEN' is written as 'MHPGF' and 'GERMAN' is written as 'SFHPCO'. How will 'GLOBAL' be written as in that language?

- Ans
- 1. OLGNC D
  - 2. PMHLAB
  - 3. OLGLAB
  - 4. PMHNCD

Question ID : 26433090046  
Status : Answered  
Chosen Option : 2

Q.15 Six students are sitting around a circular table facing the centre. Jitender is an immediate neighbour of both Shahid and Jaya. Komal is sitting second to the right of Shahid. Tarun is sitting third to the left of Jaya. Vijay is an immediate neighbour of both Komal and Jaya. Who is the immediate neighbour of Jitender and Tarun?

- Ans
- 1. Jaya
  - 2. Shahid
  - 3. Vijay
  - 4. Komal

Question ID : 26433069664  
Status : Answered  
Chosen Option : 3

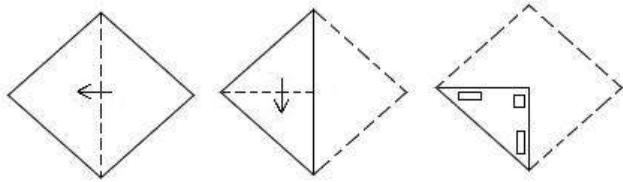
Q.16 'A # B' means 'B is the sister of A'  
'A @ B' means 'B is the brother of A'  
'A % B' means 'B is the daughter of A'  
'A \$ B' means 'B is the husband of A'  
If A \$ B % C # D @ E, then how is E related to A?

- Ans
- 1. Son
  - 2. Brother
  - 3. Father
  - 4. Husband

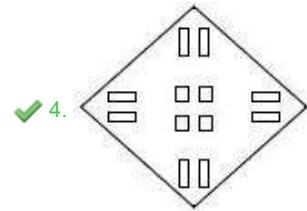
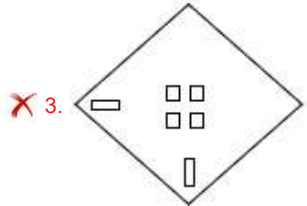
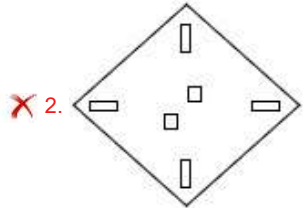
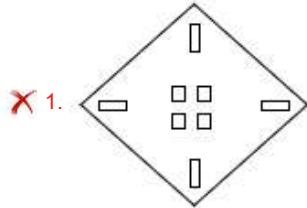
Question ID : 26433068534  
Status : Not Attempted and Marked For Review  
Chosen Option : --



Q.17 A paper is folded and cut as shown below. How will it appear when unfolded?



Ans



Question ID : 26433090093

Status : Answered

Chosen Option : 4

Q.18 Which of the following terms will replace the question mark (?) in the given series?  
BDPY, HITB, ?, TSBH, ZXFK

Ans ✗ 1. NMXE

✓ 2. NNXE

✗ 3. NMXF

✗ 4. NNYF

Question ID : 26433069448

Status : Answered

Chosen Option : 2

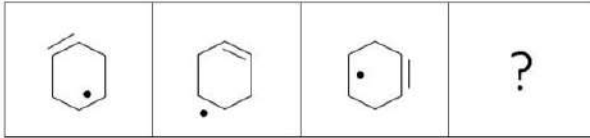
Q.19 Which two signs should be interchanged to make the below equation mathematically correct?

$$18 + 60 \div 15 \times 24 - 12 = 84$$

- Ans
- ✓ 1.  $\times$  and  $+$
  - ✗ 2.  $+$  and  $-$
  - ✗ 3.  $\div$  and  $-$
  - ✗ 4.  $\times$  and  $\div$

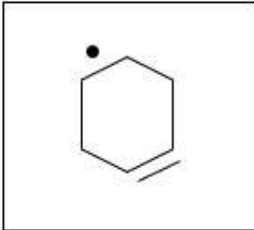
Question ID : 264330117494  
Status : Answered  
Chosen Option : 1

Q.20 Select the figure from among the given options that can replace the question mark (?) in the following series.

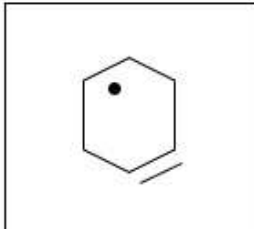


Ans

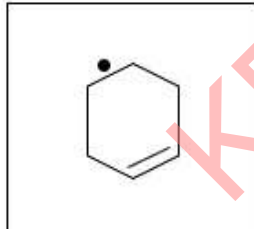
✗ 1.



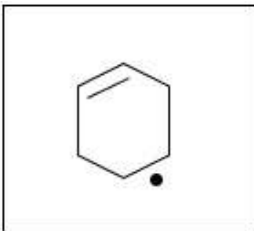
✗ 2.



✓ 3.



✗ 4.



Question ID : 26433080764  
Status : Answered  
Chosen Option : 3

Q.1 'Kharchi Puja' is primarily celebrated in which of the following states of India?

- Ans
- 1. Bihar
  - 2. Rajasthan
  - 3. Tamil Nadu
  - 4. Tripura

Question ID : 26433094890  
Status : Answered  
Chosen Option : 4

Q.2 The Reserve Bank of India was established on \_\_\_\_\_.

- Ans
- 1. May 1, 1932
  - 2. January 1, 1945
  - 3. April 1, 1935
  - 4. June 1, 1935

Question ID : 26433054800  
Status : Answered  
Chosen Option : 3

Q.3 Who has been awarded Sangeet Natak Akademi Award in the year 2016 for the contribution to Chhau?

- Ans
- 1. Suchitra Ella
  - 2. Vidushi K.S. Jayalakshmi
  - 3. Mahaboob Subhani
  - 4. Gopal Prasad Dubey

Question ID : 264330115891  
Status : Answered  
Chosen Option : 1

Q.4 \_\_\_\_\_ are an example of public goods and services.

- Ans
- 1. roads
  - 2. clothes
  - 3. cosmetic products
  - 4. a pack of biscuits

Question ID : 264330115281  
Status : Answered  
Chosen Option : 1

Q.5 निम्नलिखित में से किस राज्य में द्विसदनीय विधायिका है?

- Ans  1. पंजाब  
 2. कर्नाटक  
 3. तमिलनाडु  
 4. हरियाणा

Question ID : 26433086861  
Status : Answered  
Chosen Option : 2

Q.6 During which movement did Chauri-Chaura incident happen?

- Ans  1. Civil Disobedience Movement  
 2. Non-cooperation movement  
 3. Champaran Movement  
 4. Quit India Movement

Question ID : 264330115690  
Status : Answered  
Chosen Option : 2

Q.7 As per Consumer Protection Rules, 2021, National Commission shall have jurisdiction to entertain complaints where value of the goods or services paid as consideration exceeds \_\_\_\_\_.

- Ans  1. rupees one crore  
 2. rupees ten crore  
 3. rupees two crore  
 4. rupees five crore

Question ID : 264330116237  
Status : Answered  
Chosen Option : 1

Q.8 \_\_\_\_\_ is associated with spoilage, development of off-flavors, deterioration of textures, discoloration and loss of nutritional value.

- Ans  1. food conservation  
 2. food preservation  
 3. food processing  
 4. food deterioration

Question ID : 264330115262  
Status : Answered  
Chosen Option : 4

Q.9 Area wise the largest state of India is \_\_\_\_\_.

- Ans  1. Uttar Pradesh  
 2. Madhya Pradesh  
 3. Maharashtra  
 4. Rajasthan

Question ID : 264330116089  
Status : Answered  
Chosen Option : 4

Q.10 \_\_\_\_\_ एक अभ्यास है जिसका उद्देश्य वैकल्पिक मौसम में एक से अधिक फसलों की खेती करना है।

- Ans  1. वन कृषि  
 2. खरीफ फसल लेना  
 3. सीढ़ीदार खेती  
 4. बहुविध फसल खेती

Question ID : 264330115428  
Status : Answered  
Chosen Option : 4

Q.11 Amongst the following, which boxing weight class is the heaviest?

- Ans  1. Pin  
 2. Light  
 3. Feather  
 4. Fly

Question ID : 26433086733  
Status : Answered  
Chosen Option : 4

Q.12 A sudden and constant rainfall, along with violent thunder and lightning is called the \_\_\_\_\_.

- Ans  1. Break of the monsoon  
 2. Onset of the monsoon  
 3. Cloudburst monsoon  
 4. Burst of the monsoon

Question ID : 264330115983  
Status : Answered  
Chosen Option : 4

Q.13 How many player play at a time in a Kabaddi match from one team?

Ans  1. 6

2. 7

3. 5

4. 8

Question ID : 26433071574  
Status : Answered  
Chosen Option : 2

Q.14 Which of the following dynasties controlled the Silk Route during post Mauryan period?

Ans  1. Cheras

2. Satavahanas

3. Shungas

4. Kushanas

Question ID : 26433085227  
Status : Answered  
Chosen Option : 4

Q.15 Who won the bypoll election and became Member of Legislative Assembly from Brajarajnagar constituency in Odisha, India in 2022?

Ans  1. Piyush Goyal

2. Alaka Mohanty

3. Asish Das

4. Sudip Roy Barman

Question ID : 264330114966  
Status : Answered  
Chosen Option : 2

Q.16 As of March 2022, which of the following dance forms is in the category of a classical dance by the Sangeet Natak Akademi?

Ans  1. Bihu

2. Kalbeliya

3. Ghoomar

4. Manipuri

Question ID : 26433070805  
Status : Answered  
Chosen Option : 2

Q.17 Which of the following does not come from sugarcane?

- Ans  1. khandsari  
 2. honey  
 3. molasses  
 4. sugar

Question ID : 264330115528  
Status : Answered  
Chosen Option : 2

Q.18 Which part of the Constitution of India deals with the Panchayat?

- Ans  1. Part VIII  
 2. Part IX  
 3. Part X  
 4. Part XI

Question ID : 264330115616  
Status : Answered  
Chosen Option : 2

Q.19 Who has been appointed as the Permanent Representative of India to the United Nations in June 2022?

- Ans  1. Asoke Kumar Mukerji  
 2. Ruchira Kamboj  
 3. Syed Akbaruddin  
 4. Nirupam Sen

Question ID : 264330114984  
Status : Answered  
Chosen Option : 2

Q.20 आधुनिक आवर्त नियम (Modern Periodic Law) का प्रतिपादन किसने किया?

- Ans  1. मोसले (Moseley)  
 2. लोथर मेयर (Lothar Meyer)  
 3. मेंडलीफ (Mendeleev)  
 4. डोबेराइनर (Dobereiner)

Question ID : 26433066698  
Status : Not Answered  
Chosen Option : --

Q.1 A man, who practices running, covers the first half of the distance at 4 km/h and the remaining half of the distance at 6 km/h. What is his average speed?

- Ans
- 1. 5 km/h
  - 2. 5.2 km/h
  - 3. 4.8 km/h
  - 4. 4.5 km/h

Question ID : 26433075921  
Status : Answered  
Chosen Option : 3

Q.2 Three years ago, Rahul borrowed a sum of money at compound interest rate of 10% per annum compounding annually. If the present value of that borrowed money is Rs.11,979, how much money was borrowed by Rahul?

- Ans
- 1. Rs.9,000
  - 2. Rs.8,979
  - 3. Rs.9,979
  - 4. Rs.8,000

Question ID : 26433080340  
Status : Answered  
Chosen Option : 1

Q.3 If A, B and C work individually, then they can finish a piece of work in 27, 36 and 45 days respectively. How many days are required to complete the task if they work together?

- Ans
- 1.  $13\frac{11}{47}$
  - 2.  $15\frac{9}{47}$
  - 3.  $10\frac{33}{47}$
  - 4.  $11\frac{23}{47}$

Question ID : 26433079891  
Status : Answered  
Chosen Option : 4

Q.4 In 65 litres of a mixture of kerosene and petrol, the ratio of kerosene to petrol is 3 : 2. In order to make this ratio 4 : 5, how many litres of petrol should be added to the given mixture?

- Ans
- 1. 29.25
  - 2. 24.5
  - 3. 23.25
  - 4. 22.75

Question ID : 26433080000  
Status : Answered  
Chosen Option : 4



Q.5 A dealer marks an air-conditioner for ₹1,20,000 and allows a discount of 12% on it. What is its selling price (in ₹)?

- Ans
- 1. 1,10,500
  - 2. 1,16,000
  - 3. 1,06,050
  - 4. 1,05,600

Question ID : 26433061890  
Status : Answered  
Chosen Option : 4

Q.6 A shopkeeper listed the marked price of a table as a certain amount and he gave two successive discounts of 10% and 10%. If the shopkeeper sold it at ₹1,458, then the marked price is:

- Ans
- 1. ₹1,800
  - 2. ₹1,870
  - 3. ₹1,850
  - 4. ₹1,830

Question ID : 26433090303  
Status : Answered  
Chosen Option : 1

Q.7 An amount of ₹10,000 becomes ₹12,100 in 2 years at a certain interest rate compounded annually. Find the amount after 4 years.

- Ans
- 1. ₹14,341
  - 2. ₹16,461
  - 3. ₹13,431
  - 4. ₹14,641

Question ID : 26433081719  
Status : Answered  
Chosen Option : 4

Q.8 A number is increased by 8% and then, the increased number is decreased by 8%. What is the net increase or decrease in the number?

- Ans
- 1. 0.36% increase
  - 2. 0.36% decrease
  - 3. 0.64% decrease
  - 4. 0.64% increase

Question ID : 26433075968  
Status : Answered  
Chosen Option : 3

Q.9 If books bought at prices ranging from Rs.200 to Rs.350 are being sold at prices ranging from Rs.300 to Rs.450, what is the highest possible profit that might be made in selling 8 books?

- Ans
- 1. Rs.1,800
  - 2. Rs.2,000
  - 3. Rs.400
  - 4. Rs.1,600

Question ID : 26433076036  
Status : Answered  
Chosen Option : 1

Q.10 If a number 'a' is divisible by 18 and another number 'b' is divisible by 12, then  $(a^2 - b^2)$  is divisible by :

- Ans
- 1. 48
  - 2. 30
  - 3. 36
  - 4. 40

Question ID : 26433081701  
Status : Answered  
Chosen Option : 4

Q.11 If the radius and height of the cylinder are 91 m and 2.5 m, respectively, then what is the curved surface area and total surface area of the cylinder in respective manner? (Use  $\pi = 22/7$ )

- Ans
- 1. 2430 m<sup>2</sup> and 73482 m<sup>2</sup>
  - 2. 1340 m<sup>2</sup> and 54382 m<sup>2</sup>
  - 3. 1420 m<sup>2</sup> and 53582 m<sup>2</sup>
  - 4. 1430 m<sup>2</sup> and 53482 m<sup>2</sup>

Question ID : 26433085493  
Status : Answered  
Chosen Option : 4

Q.12 Find the ratio of the total surface area to curved surface area of a cylinder whose radius is 20 cm and height 50 cm.

- Ans
- 1. 5 : 7
  - 2. 7 : 5
  - 3. 3 : 5
  - 4. 5 : 3

Question ID : 26433066327  
Status : Answered  
Chosen Option : 2

Q.13

The HCF of  $\frac{3}{4}$ ,  $\frac{5}{7}$ ,  $\frac{7}{9}$  and  $\frac{1}{12}$  will be:

Ans

1.  $\frac{1}{63}$

2.  $\frac{1}{126}$

3.  $\frac{1}{252}$

4.  $\frac{1}{378}$

Question ID : 26433091511

Status : Answered

Chosen Option : 3

Q.14 Ram wants to paint all the walls and ceiling of his reading room personally. He started painting his room and after painting the area of  $16 \text{ m}^2$ , a paint tin of 4 litres is exhausted. How many paint tins are required to paint the remaining area, if the total area of his room to be painted is  $176 \text{ m}^2$  ?

Ans  1. 20

2. 30

3. 40

4. 10

Question ID : 26433079940

Status : Answered

Chosen Option : 3

Q.15 If x and y are inversely proportional to each other and  $x = 27$  when  $y = 7$ , then what is the value of x when  $y = 21$ ?

Ans  1. 21

2. 9

3. 7

4. 27

Question ID : 26433079776

Status : Answered

Chosen Option : 2

Q.16 A thief moving at 40 km/h covers a distance in 5 hours 15 minutes. If the police chasing him cover the same distance at 50 km/h, then how long will the police take to cover the same distance?

- Ans
- 1. 5 hours 20 minutes
  - 2. 4 hours 12 minutes
  - 3. 3 hours 15 minutes
  - 4. 4 hours 50 minutes

Question ID : 26433074996  
Status : Answered  
Chosen Option : 2

Q.17 An umbrella is bought at Rs.80 and sold at Rs.68. What is the percentage of loss?

- Ans
- 1. 12%
  - 2. 15%
  - 3. 14%
  - 4. 13%

Question ID : 26433075143  
Status : Answered  
Chosen Option : 2

Q.18 The average weight of 20 people is 75 kgs. The average weight of 10 people out of them is 70 kgs. The average weight of 5 people out of the remaining people is 75 kgs. Find the average weight of 5 people remaining in the end.

- Ans
- 1. 80 kgs
  - 2. 75 kgs
  - 3. 90 kgs
  - 4. 85 kgs

Question ID : 264330116688  
Status : Answered  
Chosen Option : 4

Q.19 By what percentage should a car driver increase the speed of the car to reduce the time by 40% to cover a fixed distance?

- Ans
- 1.  $68\frac{1}{3}\%$
  - 2.  $66\frac{2}{3}\%$
  - 3.  $53\frac{1}{6}\%$
  - 4.  $64\frac{1}{3}\%$

Question ID : 26433091505  
Status : Answered  
Chosen Option : 2

**Q.20** A is thrice as good a workman as B. A started the work and they worked together on alternate days and finished the work in 24 days. The number of days taken by A alone to finish the work was:

- Ans
- 1. 16
  - 2. 24
  - 3. 21
  - 4. 18

Question ID : 26433087394  
Status : Answered  
Chosen Option : 4

Section : Part-D-English

**Q.1** Select the most appropriate option that can substitute the underlined segment in the given sentence.

My boss have insured me that my salary will be credited next week.

- Ans
- 1. have ensured
  - 2. has assured
  - 3. has cautioned
  - 4. had entrusted

Question ID : 26433088162  
Status : Answered  
Chosen Option : 2

**Q.2** Select the most appropriate ANTONYM of the given word.

Obvious

- Ans
- 1. Evident
  - 2. Ambiguous
  - 3. Inherent
  - 4. Apparent

Question ID : 26433092072  
Status : Answered  
Chosen Option : 2

**Q.3** Select the most appropriate ANTONYM of the given word.

Enormous

- Ans
- 1. Stumble
  - 2. Enjoyable
  - 3. Mammoth
  - 4. Negligible

Question ID : 26433092069  
Status : Answered  
Chosen Option : 4

**Q.4 Select the most appropriate synonym of the given word.**

**Gloomy**

- Ans  1. Unhappy  
 2. Blissful  
 3. Hopeful  
 4. Light

Question ID : 26433072070  
Status : Answered  
Chosen Option : 1

**Q.5 Select the most appropriate synonym of the given word.**

**Stratified**

- Ans  1. Scattered  
 2. Consolidated  
 3. Laminated  
 4. Ungraded

Question ID : 26433089099  
Status : Answered  
Chosen Option : 1

**Q.6 Select the most appropriate option that can substitute the underlined segment in the given sentence.**

Josephine confessed that she couldn't stand another hour out daylight.

- Ans  1. couldn't wait another hour from  
 2. couldn't stand another hour of  
 3. couldn't stand another hour for  
 4. couldn't stand other hour in

Question ID : 26433091967  
Status : Answered  
Chosen Option : 4

**Q.7 Identify the correctly spelt sentence.**

- Ans  1. Human personality is classifide into three types- introvert, extrovert and ambivert.  
 2. Human persnality is clasified into three types- introvert, extrovert and ambivert.  
 3. Human personality is classified into three types- introvert, extrovert and ambivert.  
 4. Human personality is classified into three types- introvert, extrovert and ambivert

Question ID : 26433072825  
Status : Answered  
Chosen Option : 3

Q.8 Select the most appropriate option that can substitute the underlined segment in the given sentence. If there is no need to substitute it, select 'No substitution'.

Henry worked for a few years as a sargent in the army.

- Ans
- 1. No substitution
  - 2. sergeant
  - 3. sergant
  - 4. sergent

Question ID : 26433074005  
Status : Answered  
Chosen Option : 3

Q.9 Select the most appropriate synonym of the given word.

Annoyance

- Ans
- 1. Anger
  - 2. Hatred
  - 3. Emotion
  - 4. Agony

Question ID : 26433088204  
Status : Answered  
Chosen Option : 1

Q.10 Select the most appropriate ANTONYM of the underlined word in the following sentence.

My brother became very frail after his long sickness.

- Ans
- 1. Strong
  - 2. Violent
  - 3. Feeble
  - 4. Docile

Question ID : 26433072242  
Status : Answered  
Chosen Option : 3

Q.11 Select the most appropriate synonym to substitute the underlined word in the given sentence.

The strict measures employed by the government ensured there was peace.

- Ans
- 1. liberal
  - 2. austere
  - 3. orthodox
  - 4. valiant

Question ID : 26433074018  
Status : Answered  
Chosen Option : 2

**Q.12** The following sentence has been split into four segments. Identify the segment that contains a grammatical error.  
They have / always take / an hour's walk / before breakfast.

- Ans
- 1. an hour's walk
  - 2. always take
  - 3. before breakfast
  - 4. They have

Question ID : 26433099633  
Status : Answered  
Chosen Option : 4

**Q.13** Select the most appropriate meaning of the given idiom.

Lay hands on

- Ans
- 1. To touch or grasp someone, often with the threat of violence
  - 2. To gently lay one's hand on someone
  - 3. To try new things
  - 4. To give up

Question ID : 26433072223  
Status : Answered  
Chosen Option : 3

**Q.14** Select the word segment that substitutes (replaces) the bracketed word segment correctly and completes the sentence meaningfully:  
Distribute these fruits and desserts (WITHIN) the girls, the boys and the teachers.

- Ans
- 1. for
  - 2. in
  - 3. across
  - 4. among

Question ID : 264330101434  
Status : Answered  
Chosen Option : 4

**Q.15** Select the correct idiom that can substitute the italicised group of words in the given sentence.

To succeed in competitive exams is not *an easy task*.

- Ans
- 1. cat's paw
  - 2. a black sheep
  - 3. child's play
  - 4. a bed of thorns

Question ID : 26433084760  
Status : Answered  
Chosen Option : 3



**Comprehension:**

In the following passage, some words have been deleted. Read the passage carefully and select the most appropriate option to fill in each blank.

Inevitably, my approach will often be a personal one; how the idea grew in my mind, what shapes it took, how it (1) \_\_\_\_\_ me and affected my action. There will also be some (2) \_\_\_\_\_ personal experiences which have nothing to do with the subject in its wider aspects, but which coloured my mind and influenced my approach to the whole problem. Our judgments of countries and peoples are based on many factors; among them our personal contacts, if there have been any, have a (3) \_\_\_\_\_ influence. If we do not personally know the people of a country we are apt to misjudge them even (4) \_\_\_\_\_ than otherwise, and (5) \_\_\_\_\_ them entirely alien and different.

**SubQuestion No : 16**

**Q.16 Select the most appropriate option to fill in blank number 1.**

- Ans
- 1. will influence
  - 2. is influenced
  - 3. is influencing
  - 4. influenced

Question ID : 26433092117  
Status : Answered  
Chosen Option : 1

**Comprehension:**

In the following passage, some words have been deleted. Read the passage carefully and select the most appropriate option to fill in each blank.

Inevitably, my approach will often be a personal one; how the idea grew in my mind, what shapes it took, how it (1) \_\_\_\_\_ me and affected my action. There will also be some (2) \_\_\_\_\_ personal experiences which have nothing to do with the subject in its wider aspects, but which coloured my mind and influenced my approach to the whole problem. Our judgments of countries and peoples are based on many factors; among them our personal contacts, if there have been any, have a (3) \_\_\_\_\_ influence. If we do not personally know the people of a country we are apt to misjudge them even (4) \_\_\_\_\_ than otherwise, and (5) \_\_\_\_\_ them entirely alien and different.

**SubQuestion No : 17**

**Q.17 Select the most appropriate option to fill in blank number 2.**

- Ans
- 1. entirety
  - 2. entirely
  - 3. entire
  - 4. untiredly

Question ID : 26433092118  
Status : Answered  
Chosen Option : 2

**Comprehension:**

In the following passage, some words have been deleted. Read the passage carefully and select the most appropriate option to fill in each blank.

Inevitably, my approach will often be a personal one; how the idea grew in my mind, what shapes it took, how it (1) \_\_\_\_\_ me and affected my action. There will also be some (2) \_\_\_\_\_ personal experiences which have nothing to do with the subject in its wider aspects, but which coloured my mind and influenced my approach to the whole problem. Our judgments of countries and peoples are based on many factors; among them our personal contacts, if there have been any, have a (3) \_\_\_\_\_ influence. If we do not personally know the people of a country we are apt to misjudge them even (4) \_\_\_\_\_ than otherwise, and (5) \_\_\_\_\_ them entirely alien and different.

**SubQuestion No : 18**

**Q.18 Select the most appropriate option to fill in blank number 3.**

- Ans**  1. marked  
 2. marking  
 3. marks  
 4. mark

Question ID : 26433092119  
Status : Answered  
Chosen Option : 1

**Comprehension:**

In the following passage, some words have been deleted. Read the passage carefully and select the most appropriate option to fill in each blank.

Inevitably, my approach will often be a personal one; how the idea grew in my mind, what shapes it took, how it (1) \_\_\_\_\_ me and affected my action. There will also be some (2) \_\_\_\_\_ personal experiences which have nothing to do with the subject in its wider aspects, but which coloured my mind and influenced my approach to the whole problem. Our judgments of countries and peoples are based on many factors; among them our personal contacts, if there have been any, have a (3) \_\_\_\_\_ influence. If we do not personally know the people of a country we are apt to misjudge them even (4) \_\_\_\_\_ than otherwise, and (5) \_\_\_\_\_ them entirely alien and different.

**SubQuestion No : 19**

**Q.19 Select the most appropriate option to fill in blank number 4.**

- Ans**  1. most  
 2. very much  
 3. much  
 4. more

Question ID : 26433092120  
Status : Answered  
Chosen Option : 4

**Comprehension:**

In the following passage, some words have been deleted. Read the passage carefully and select the most appropriate option to fill in each blank.

Inevitably, my approach will often be a personal one; how the idea grew in my mind, what shapes it took, how it (1) \_\_\_\_\_ me and affected my action. There will also be some (2) \_\_\_\_\_ personal experiences which have nothing to do with the subject in its wider aspects, but which coloured my mind and influenced my approach to the whole problem. Our judgments of countries and peoples are based on many factors; among them our personal contacts, if there have been any, have a (3) \_\_\_\_\_ influence. If we do not personally know the people of a country we are apt to misjudge them even (4) \_\_\_\_\_ than otherwise, and (5) \_\_\_\_\_ them entirely alien and different.

**SubQuestion No : 20**

**Q.20** Select the most appropriate option to fill in blank number 5.

- Ans**  1. consider  
 2. had considered  
 3. considered  
 4. to consider

Question ID : 26433092121  
Status : Answered  
Chosen Option : 1

**Section : Part-D-Hindi**

**Q.1** एक साथ प्रयुक्त होने वाला कौन-सा समानार्थी शब्द निम्न वाक्य के लिए उपयुक्त होगा?  
साधु संत \_\_\_\_\_ भोजन से खूब संतुष्ट होते हैं।

- Ans**  1. घास - पात  
 2. घिसा - पिटा  
 3. शाक - भाजी  
 4. मांस - मछली

Question ID : 26433079244  
Status : Not Answered  
Chosen Option : --

**Q.2** निम्नलिखित वाक्य के किस शब्द में अशुद्धि है?  
दिल्ली से जयपूर तक चौड़ी सड़क है।

- Ans**  1. चौड़ी  
 2. दिल्ली  
 3. सड़क  
 4. जयपूर

Question ID : 26433066752  
Status : Not Answered  
Chosen Option : --

Q.3 'वह गाड़ी के पास सो रहा है।'  
अनिश्चयवाचक सर्वनाम का प्रयोग कर इस वाक्य को पुनः लिखिए।

- Ans
- 1. वे गाड़ी के पास सो रहे हैं।
  - 2. कौन गाड़ी के पास सो रहा है?
  - 3. कोई गाड़ी के पास सो रहा है।
  - 4. वह स्वयं गाड़ी के पास सो रहा है।

Question ID : 26433066979  
Status : Not Answered  
Chosen Option : --

Q.4 निम्नलिखित में से कौन सा शब्द भाववाचक संज्ञा नहीं है?

- Ans
- 1. लघुता
  - 2. आलस्य
  - 3. समृद्धि
  - 4. सजावट

Question ID : 26433085027  
Status : Not Answered  
Chosen Option : --

Q.5 'असफल' का विलोम शब्द क्या होगा?

- Ans
- 1. विगत
  - 2. निष्फल
  - 3. विफल
  - 4. सफल

Question ID : 26433085078  
Status : Not Answered  
Chosen Option : --

Q.6 निम्न वाक्यांश के लिए एक शब्द क्या होगा?  
जो सब कुछ जानता है

- Ans
- 1. समान
  - 2. सर्वज्ञ
  - 3. सामाजिक
  - 4. सर्वस्व

Question ID : 26433070090  
Status : Not Answered  
Chosen Option : --

Q.7 पवन तेज गति से चल रही है।  
उपरोक्त वाक्य के रेखांकित पद का पर्यायवाची किस विकल्प में है?

- Ans
- 1. मोषक
  - 2. मृगवाहन
  - 3. अयन
  - 4. दुश्मन

Question ID : 26433079183  
Status : Not Answered  
Chosen Option : --

Q.8 दिए गए मुहावरे में रेखांकित अंश के स्थान पर सबसे उपयुक्त विकल्प कौन-सा होगा?  
गज भर की मकान होना।

- Ans
- 1. जुबान
  - 2. पहचान
  - 3. दुकान
  - 4. दीवार

Question ID : 26433066742  
Status : Not Answered  
Chosen Option : --

Q.9 निम्न में से किस वाक्य में 'निजी' के सही पर्यायवाची शब्द का प्रयोग हुआ है?

- Ans
- 1. राघव सामाजिक कार्यों में रूचि लेता है।
  - 2. विनय अत्यंत सभ्य है।
  - 3. आज प्रत्येक व्यक्ति वैयक्तिक लाभ के पीछे दौड़ रहा है।
  - 4. इस प्रकार के कार्यों से ही देश का सर्वांगीण विकास होगा।

Question ID : 26433067012  
Status : Not Answered  
Chosen Option : --

Q.10 'अपने मुंह \_\_\_\_\_ बनना' इस मुहावरे को पूरा करें।

- Ans
- 1. सुंदर
  - 2. मियां मिट्टू
  - 3. चालाक
  - 4. अच्छा

Question ID : 26433066818  
Status : Not Answered  
Chosen Option : --

Q.11 "अभ्युदय दिल्ली की किताबें लाकर पढ़ता है।"  
उपरोक्त वाक्य में कारक सम्बन्धी त्रुटि पहचानकर निम्नलिखित में से शुद्ध वाक्य का चयन कीजिए।

- Ans
- 1. अभ्युदय दिल्ली के किताबें लाकर पढ़ता है।
  - 2. अभ्युदय दिल्ली से किताबें लाकर पढ़ता है।
  - 3. अभ्युदय दिल्ली को किताबें लाकर पढ़ता है।
  - 4. अभ्युदय दिल्ली पर किताबें लाकर पढ़ता है।

Question ID : 26433066966  
Status : Not Answered  
Chosen Option : --

Q.12 'यज्ञशाला \_\_\_\_\_।'।  
उपर्युक्त वाक्य में रिक्त स्थान के लिए उपयुक्त विकल्प निम्न में से क्या होगा?

- Ans
- 1. वह स्थान है, जहां न्याय किया जाता है
  - 2. वह स्थान है, जहां हवन किया जाता है
  - 3. वह स्थान है, जहां बैठकर चर्चा होती है
  - 4. वह स्थान है, जहां व्यायाम होता है

Question ID : 26433067047  
Status : Not Answered  
Chosen Option : --

Q.13 दिए गए वाक्य में रेखांकित अंश के स्थान पर सबसे उपयुक्त विकल्प कौन-सा होगा?  
दुर्गा के अनेकों नाम हैं।

- Ans
- 1. करोड़ों
  - 2. अनेक
  - 3. बहुतों
  - 4. लाखों

Question ID : 26433066717  
Status : Not Answered  
Chosen Option : --

Q.14 निम्नलिखित वाक्य का शुद्ध रूप किस वाक्य में लिखा गया है?  
'गोपाल ने रसगुल्ले या जलेबी खाया।'

- Ans
- 1. गोपाल ने रसगुल्ला या जलेबी खायी।
  - 2. गोपाल ने रसगुल्ले या जलेबी खाए।
  - 3. गोपाल ने रसगुल्ला या जलेबी खाया।
  - 4. गोपाल ने रसगुल्ला या जलेबी खायीं।

Question ID : 26433079236  
Status : Not Answered  
Chosen Option : --

Q.15 'बिना पलक गिराए' वाक्यांश के लिए सार्थक शब्द है-

- Ans  1. पलक  
 2. अपलक  
 3. बंधक  
 4. निद्रा

Question ID : 26433062229

Status : Not Answered

Chosen Option : --

**Comprehension:**

निम्न गद्यांश के आधार पर प्रश्न संख्या 1-5 के उत्तर दीजिए।  
दूर संचार के साधनों को 1. \_\_\_\_\_ कहा जाता है। किसी भी देश के 2. \_\_\_\_\_ दूरसंचार के विकसित साधनों की अहम भूमिका रहती है। 3. \_\_\_\_\_ को जल्दी-से-जल्दी भेजने या प्राप्त करने के लिए मनुष्य पुरातन काल से ही साधन खोजता आ रहा है। पुरातन काल में संदेश भेजने के लिए हम 4. \_\_\_\_\_ सहायता लिया करते थे। कवियों की कल्पना के संदेशवाहक मेघ व चंद्रमा थे। समय के परिवर्तन के फलस्वरूप विज्ञान के क्षेत्र में आई क्रांति के कारण कबूतरों के स्थान पर आकाश में 5. \_\_\_\_\_ उड़ने लगे, ऊँट एवं घोड़ों का स्थान रेल एवं मोटर गाड़ियों ने ले लिया, मेघदूत के स्थान पर प्रयोग की जाने लगी रेडियो व सूक्ष्म तरंगें तथा चंद्रमा का स्थान ले लिया कृत्रिम उपग्रहों ने।

SubQuestion No : 16

Q.16 गद्यांश में दिए गए रिक्त स्थान 1 के लिए सर्वाधिक उपयुक्त शब्द का चयन विकल्पों में से कीजिए।

- Ans  1. 'वर्तमान समाज का स्नायुत्रं'  
 2. 'सबका साथ'  
 3. 'बेईमान व्यक्ति'  
 4. 'ईमानदार व्यक्ति'

Question ID : 26433086293

Status : Not Answered

Chosen Option : --

**Comprehension:**

निम्न गद्यांश के आधार पर प्रश्न संख्या 1-5 के उत्तर दीजिए।  
दूर संचार के साधनों को 1. \_\_\_\_\_ कहा जाता है। किसी भी देश के 2. \_\_\_\_\_ दूरसंचार के विकसित साधनों की अहम भूमिका रहती है। 3. \_\_\_\_\_ को जल्दी-से-जल्दी भेजने या प्राप्त करने के लिए मनुष्य पुरातन काल से ही साधन खोजता आ रहा है। पुरातन काल में संदेश भेजने के लिए हम 4. \_\_\_\_\_ सहायता लिया करते थे। कवियों की कल्पना के संदेशवाहक मेघ व चंद्रमा थे। समय के परिवर्तन के फलस्वरूप विज्ञान के क्षेत्र में आई क्रांति के कारण कबूतरों के स्थान पर आकाश में 5. \_\_\_\_\_ उड़ने लगे, ऊँट एवं घोड़ों का स्थान रेल एवं मोटर गाड़ियों ने ले लिया, मेघदूत के स्थान पर प्रयोग की जाने लगी रेडियो व सूक्ष्म तरंगें तथा चंद्रमा का स्थान ले लिया कृत्रिम उपग्रहों ने।

SubQuestion No : 17

Q.17 गद्यांश में दिए गए रिक्त स्थान 2 के लिए सर्वाधिक उपयुक्त शब्द का चयन विकल्पों में से कीजिए।

- Ans  1. समसामयिक परिवेश  
 2. साहित्यिक परिवेश  
 3. आर्थिक विकास में  
 4. सामाजिक भूमिका

Question ID : 26433086294

Status : Not Answered

Chosen Option : --

**Comprehension:**

निम्न गद्यांश के आधार पर प्रश्न संख्या 1-5 के उत्तर दीजिए।  
दूर संचार के साधनों को 1. \_\_\_\_\_ कहा जाता है। किसी भी देश के 2. \_\_\_\_\_ दूरसंचार के विकसित साधनों की अहम भूमिका रहती है। 3. \_\_\_\_\_ को जल्दी-से-जल्दी भेजने या प्राप्त करने के लिए मनुष्य पुरातन काल से ही साधन खोजता आ रहा है। पुरातन काल में संदेश भेजने के लिए हम 4. \_\_\_\_\_ सहायता लिया करते थे। कवियों की कल्पना के संदेशवाहक मेघ व चंद्रमा थे। समय के परिवर्तन के फलस्वरूप विज्ञान के क्षेत्र में आई क्रांति के कारण कबूतरों के स्थान पर आकाश में 5. \_\_\_\_\_ उड़ने लगे, ऊँट एवं घोड़ों का स्थान रेल एवं मोटर गाड़ियों ने ले लिया, मेघदूत के स्थान पर प्रयोग की जाने लगी रेडियो व सूक्ष्म तरंगें तथा चंद्रमा का स्थान ले लिया कृत्रिम उपग्रहों ने।

**SubQuestion No : 18**

Q.18 गद्यांश में दिए गए रिक्त स्थान 3 के लिए सर्वाधिक उपयुक्त शब्द का चयन विकल्पों में से कीजिए।

- Ans
- 1. आकलन/प्राकलन
  - 2. संकल्प/विकल्प
  - 3. रिक्तियों/विकल्पों
  - 4. सूचनाओं/समाचारों

Question ID : 26433086295

Status : Not Answered

Chosen Option : --

**Comprehension:**

निम्न गद्यांश के आधार पर प्रश्न संख्या 1-5 के उत्तर दीजिए।  
दूर संचार के साधनों को 1. \_\_\_\_\_ कहा जाता है। किसी भी देश के 2. \_\_\_\_\_ दूरसंचार के विकसित साधनों की अहम भूमिका रहती है। 3. \_\_\_\_\_ को जल्दी-से-जल्दी भेजने या प्राप्त करने के लिए मनुष्य पुरातन काल से ही साधन खोजता आ रहा है। पुरातन काल में संदेश भेजने के लिए हम 4. \_\_\_\_\_ सहायता लिया करते थे। कवियों की कल्पना के संदेशवाहक मेघ व चंद्रमा थे। समय के परिवर्तन के फलस्वरूप विज्ञान के क्षेत्र में आई क्रांति के कारण कबूतरों के स्थान पर आकाश में 5. \_\_\_\_\_ उड़ने लगे, ऊँट एवं घोड़ों का स्थान रेल एवं मोटर गाड़ियों ने ले लिया, मेघदूत के स्थान पर प्रयोग की जाने लगी रेडियो व सूक्ष्म तरंगें तथा चंद्रमा का स्थान ले लिया कृत्रिम उपग्रहों ने।

**SubQuestion No : 19**

Q.19 गद्यांश में दिए गए रिक्त स्थान 4 के लिए सर्वाधिक उपयुक्त शब्द का चयन विकल्पों में से कीजिए।

- Ans
- 1. इन्टरनेट, सोशल मीडिया
  - 2. कबूतर, ऊँट, घोड़ों तथा अन्य जानवरों की
  - 3. फोन, मोबाईल
  - 4. आवाज देकर, बुलाकर

Question ID : 26433086296

Status : Not Answered

Chosen Option : --



**Comprehension:**

निम्न गद्यांश के आधार पर प्रश्न संख्या 1-5 के उत्तर दीजिए।

दूर संचार के साधनों को 1. \_\_\_\_\_ कहा जाता है। किसी भी देश के 2. \_\_\_\_\_ दूरसंचार के विकसित साधनों की अहम भूमिका रहती है। 3. \_\_\_\_\_ को जल्दी-से-जल्दी भेजने या प्राप्त करने के लिए मनुष्य पुरातन काल से ही साधन खोजता आ रहा है। पुरातन काल में संदेश भेजने के लिए हम 4. \_\_\_\_\_ सहायता लिया करते थे। कवियों की कल्पना के संदेशवाहक मेघ व चंद्रमा थे। समय के परिवर्तन के फलस्वरूप विज्ञान के क्षेत्र में आई क्रांति के कारण कबूतरों के स्थान पर आकाश में 5. \_\_\_\_\_ उड़ने लगे, ऊँट एवं घोड़ों का स्थान रेल एवं मोटर गाड़ियों ने ले लिया, मेघदूत के स्थान पर प्रयोग की जाने लगी रेडियो व सूक्ष्म तरंगें तथा चंद्रमा का स्थान ले लिया कृत्रिम उपग्रहों ने।

**SubQuestion No : 20**

Q.20 गद्यांश में दिए गए रिक्त स्थान 5 के लिए सर्वाधिक उपयुक्त शब्द का चयन विकल्पों में से कीजिए।

- Ans
- 1. ट्रैक्टर
  - 2. बैलगाड़ी
  - 3. वायुयान
  - 4. बस

Question ID : 26433086297

Status : Not Answered

Chosen Option : --

KD Job Updates

## Constable GD in CAPFs SSF Rifleman GD in Assam Rifles and Sepoy in NCB Examination 2022

Roll Number	<b>KD Job Updates</b>
Candidate Name	<b>KD Job Updates</b>
Venue Name	TCS Gito Bitan
Exam Date	25/01/2023
Exam Time	5:15 PM - 6:15 PM
Subject	Constable GD Examination 2022

Section : **Part-A-General Intelligence and Reasoning**

**Q.1** Which option represents the correct order of the given words as they would appear in the English dictionary?

- 1 Pollution
- 2 Popular
- 3 Population
- 4 Pocket
- 5 Pool

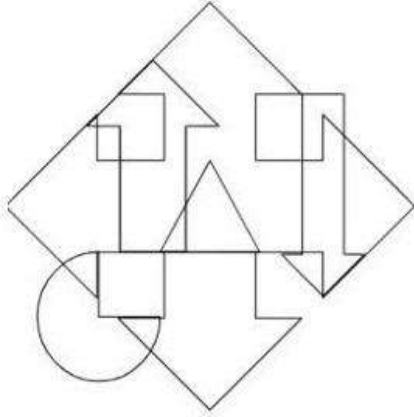
- Ans  1. 4,5,3,2,1  
 2. 4,5,1,2,3  
 3. 4,1,5,2,3  
 4. 4,1,3,2,5

Question ID : 26433069271

Status : Answered

Chosen Option : 3

Q.2 Select the option figure which is embedded in the given figure. (Rotation is NOT allowed)



Ans

✓ 1.



✗ 2.



✗ 3.



✗ 4.



Question ID : 26433085753

Status : Answered

Chosen Option : 1

Q.3 If '\$' means 'addition', '@' means 'subtraction', '#' means 'multiplication', and '&' means 'division'. What will be the value of the following expression?  
 $54 \& 6 \# 2 \$ 8 @ 4$

Ans ✓ 1. 22

✗ 2. 29

✗ 3. 30

✗ 4. 23

Question ID : 264330114183

Status : Answered

Chosen Option : 1

**Q.4** Five friends S, U, K, N, and M are sitting around a circular table facing the centre. K is the immediate neighbour of S and M. S is not the immediate neighbour of U. N is not the immediate neighbour of M. Who is the immediate neighbour of K and N?

- Ans
- 1. U
  - 2. N
  - 3. S
  - 4. M

Question ID : 26433068076  
Status : Answered  
Chosen Option : 3

**Q.5** Select the set in which the numbers are related in the same way as are the numbers of the following set.

(NOTE : Operations should be performed on the whole numbers, without breaking down the numbers into its constituent digits. E.g. 13 – Operations on 13 such as adding /subtracting/multiplying etc. to 13 can be performed. Breaking down 13 into 1 and 3 and then performing mathematical operations on 1 and 3 is NOT allowed)

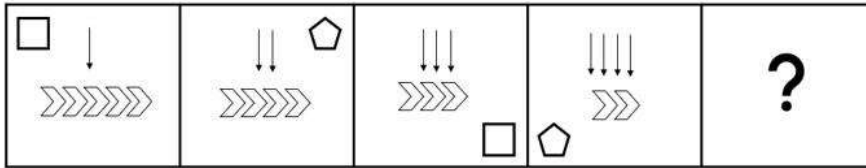
(174, 14, 15)  
(228, 24, 14)

- Ans
- 1. (180, 17, 15)
  - 2. (192, 20, 13)
  - 3. (334, 16, 23)
  - 4. (384, 45, 19)

Question ID : 26433076474  
Status : Answered  
Chosen Option : 4

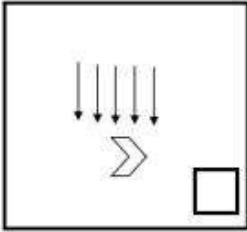
KD Job Updates

Q.6 Select the figure that will come next in the following figure series.

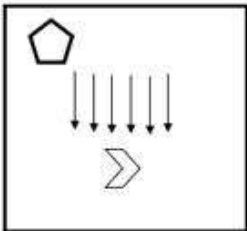


Ans

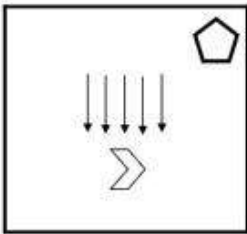
✗ 1.



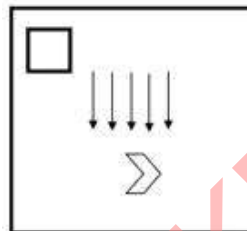
✗ 2.



✗ 3.



✓ 4.



Question ID : 26433076495

Status : Answered

Chosen Option : 4

Q.7 Which of the following letter-clusters will replace the question mark (?) and complete the following letter-cluster series?  
 KU, NT, PS, SR, UQ, ?

Ans ✗ 1. YP

✗ 2. XQ

✗ 3. YQ

✓ 4. XP

Question ID : 26433067285

Status : Answered

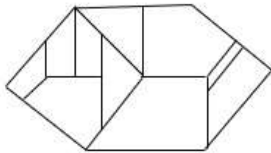
Chosen Option : 4

Q.8 Which of the following numbers will replace the question mark (?) in the given series?  
5, 8, 16, 19, 38, ?, 82

- Ans
- 1. 76
  - 2. 46
  - 3. 41
  - 4. 69

Question ID : 26433068094  
Status : Answered  
Chosen Option : 3

Q.9 Select the option figure which is embedded in the given figure. (Rotation is NOT allowed)



Ans

- 1.
- 2.
- 3.
- 4.

Question ID : 26433069347  
Status : Answered  
Chosen Option : 3

Q.10 Which two signs should be interchanged to make the below equation mathematically correct?

$$26 - 13 + 18 \div 54 \times 24 = 31$$

- Ans
- 1. - and  $\times$
  - 2.  $\times$  and  $\div$
  - 3. - and +
  - 4. + and  $\div$

Question ID : 264330117503  
Status : Answered  
Chosen Option : 3

Q.11 Select the option that is related to the fifth letter-cluster in the same way as the second letter-cluster is related to the first letter-cluster and the fourth letter-cluster is related to the third letter-cluster.

MUSIC : NFHRX:: DANCE : WZMXV:: CONCERT : ?

- Ans
- 1. XLVIMXG
  - 2. XMXVIGL
  - 3. XLMXVIG
  - 4. XLVIGMX

Question ID : 26433070325  
Status : Answered  
Chosen Option : 3

Q.12 In a certain code language, 'the shirt is dirty' is coded as '3525', 'exercise regularly' is coded as '89' and 'comb your hair' is coded as '444'. How will 'empty your vessel' be coded in that language?

- Ans
- 1. 657
  - 2. 546
  - 3. 456
  - 4. 654

Question ID : 26433067778  
Status : Answered  
Chosen Option : 2

Q.13 'D + E' means 'D is the sister of E'.  
'D - E' means 'D is the husband of E'.  
'D × E' means 'D is the father of E'.  
'D ÷ E' means 'D is the daughter of E'.  
If,  $L \div R + T \div W - M$ , then how is T related to L?

- Ans
- 1. Daughter
  - 2. Sister's daughter
  - 3. Mother's sister
  - 4. Mother

Question ID : 26433069175  
Status : Answered  
Chosen Option : 3

Q.14 Which of the following numbers will replace the question mark (?) in the given series?  
100, 80, 63, 49, 38, 30, ?

- Ans
- 1. 22
  - 2. 27
  - 3. 24
  - 4. 25

Question ID : 26433069049  
Status : Answered  
Chosen Option : 4

Q.15 P, Q, R, S, T and U are sitting in a circle facing opposite to the centre. S is sitting to the immediate right of R and immediate left of U. Q is sitting between R and P. T is sitting to the immediate right of U and immediate left of P. Who is sitting to the immediate right of P?

- Ans  1. Q  
 2. R  
 3. S  
 4. T

Question ID : 26433074611  
Status : Answered  
Chosen Option : 1

Q.16 In this question, three statements are given, followed by two conclusions numbered I and II. Assuming the statements to be true, even if they seem to be at variance with commonly known facts, decide which of the conclusions logically follows/follow from the statements.

Statements:  
Some flats are houses.  
All houses are buildings.  
All buildings are gardens.  
Conclusions:  
I. Some flats are gardens.  
II. All flats are buildings.

- Ans  1. Both conclusions I and II follow.  
 2. Only conclusion I follows.  
 3. Neither conclusion I nor II follows.  
 4. Only conclusion II follows.

Question ID : 26433070380  
Status : Answered  
Chosen Option : 2

Q.17 Select the option that is related to the fifth letter-cluster in the same way as the second letter-cluster is related to the first letter-cluster and the fourth letter-cluster is related to the third letter-cluster.

HELLO : QNNGJ :: NAMASTE : GVUCOCP :: SALAM : ?

- Ans  1. UCNCO  
 2. OCNCU  
 3. OCNBU  
 4. OCMBT

Question ID : 26433057246  
Status : Answered  
Chosen Option : 2



Q.18 Select the letter-cluster from among the given options that can replace the question mark (?) in the following series.  
PQHI, ?, TULM, VWNO

- Ans  1. RSCD  
 2. RSJK  
 3. NOFG  
 4. XYJK

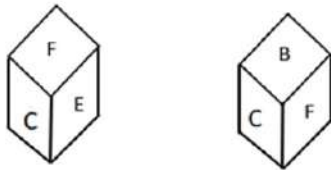
Question ID : 26433068350  
Status : Answered  
Chosen Option : 2

Q.19 In a certain language, COFFEE is coded as 12 and FOUR is coded as 8. How will ANDROID be coded in the same language?

- Ans  1. 65  
 2. 14  
 3. 10  
 4. 7

Question ID : 26433074590  
Status : Answered  
Chosen Option : 2

Q.20 Two different positions of the same dice are shown having alphabets 'A' to 'F'. Find the alphabet on the face opposite the face showing 'E'.



- Ans  1. D  
 2. B  
 3. A  
 4. C

Question ID : 26433085512  
Status : Answered  
Chosen Option : 2

Section : Part-B-General Knowledge and General awareness

Q.1 Who among the following become Member of Parliament from Rampur, Uttar Pradesh in June 2022?

- Ans  1. Ghanshyam Singh Lodhi  
 2. Yogi Adityanath  
 3. Dinesh Lal Yadav "Nirahua"  
 4. Akhilesh Yadav

Question ID : 264330114902  
Status : Answered  
Chosen Option : 2

Q.2 Which word among these was added in the preamble during the 42<sup>nd</sup> amendment?

- Ans
- 1. Freedom
  - 2. Religion
  - 3. Secular
  - 4. Nation State

Question ID : 26433089179  
Status : Answered  
Chosen Option : 3

Q.3 Plants that do not have well-differentiated body design fall in this group. The plants in this group are commonly called algae. This group is \_\_\_\_\_.

- Ans
- 1. Gymnosperms
  - 2. Pteridophytes
  - 3. Thallophytes
  - 4. Bryophytes

Question ID : 264330115185  
Status : Answered  
Chosen Option : 4

Q.4 Who has been appointed as the new Chief Justice of Jammu and Kashmir and Ladakh in October 2022?

- Ans
- 1. Justice Jaishree Thakur
  - 2. Justice Pankaj Mithal
  - 3. Justice Ali Mohammad Magrey
  - 4. Justice Prasanna Bhalachandra Varale

Question ID : 264330114993  
Status : Answered  
Chosen Option : 2

Q.5 Pick the odd one out (Hint: Millets)

- Ans
- 1. Ragi
  - 2. Bajra
  - 3. Jowar
  - 4. Potato

Question ID : 264330115537  
Status : Answered  
Chosen Option : 4

**Q.6 Identify the place in India where tropical cyclones originate from.**

- Ans  1. Arabian sea and Pacific ocean  
 2. Bay of Bengal and Indian ocean  
 3. Pacific ocean  
 4. Arctic ocean

Question ID : 26433086707  
Status : Answered  
Chosen Option : 2

**Q.7 Which among the following waves is not an electromagnetic wave?**

- Ans  1. Cathode Rays  
 2. Ultra Violet Rays  
 3. Infra-red Rays  
 4. Gamma Rays

Question ID : 264330115150  
Status : Answered  
Chosen Option : 2

**Q.8 The second edition of 'Khelo India National Winter Games 2021' was inaugurated in Jammu and Kashmir's \_\_\_\_\_ district on 26 February 2021.**

- Ans  1. Gulmarg  
 2. Doda  
 3. Ramban  
 4. Kathua

Question ID : 26433072891  
Status : Not Answered  
Chosen Option : --

**Q.9 Which of the following classical dances has its origin in Assam?**

- Ans  1. Sattriya  
 2. Kathak  
 3. Kuchipudi  
 4. Odissi

Question ID : 26433072921  
Status : Answered  
Chosen Option : 1

**Q.10 Who officially opened the Summer Olympics Games 2020?**

- Ans  1. Vladimir Putin  
 2. Emperor Naruhito  
 3. Xi Jinping  
 4. Michel Temer

Question ID : 264330115951  
Status : Not Answered  
Chosen Option : --

Q.11 Which of the following Satyagraha was led by Dr. BR Ambedkar?

- Ans  1. Individual Satyagraha  
 2. Kanpur Satyagraha  
 3. Kheda Satyagraha  
 4. Mahad Satyagraha

Question ID : 26433089887  
Status : Not Answered  
Chosen Option : --

Q.12 The Medaram Jatara Festival is a \_\_\_\_-day long festival celebrated by Koya tribe.

- Ans  1. 5  
 2. 3  
 3. 2  
 4. 4

Question ID : 264330115088  
Status : Not Answered  
Chosen Option : --

Q.13 Subsidies are provided by the government keeping in mind the \_\_\_\_\_ of public.

- Ans  1. density  
 2. choice  
 3. nature  
 4. welfare

Question ID : 264330115290  
Status : Not Answered  
Chosen Option : --

Q.14 Hymns of the Rigveda are known as \_\_\_\_\_.

- Ans  1. sukta  
 2. adhyaya  
 3. yami  
 4. shutra

Question ID : 26433089849  
Status : Answered  
Chosen Option : 1

Q.15 In which year the planning commission was set up in India?

- Ans  1. 1960  
 2. 1955  
 3. 1950  
 4. 1947

Question ID : 264330116113  
Status : Answered  
Chosen Option : 3

Q.16 As per census 2011, which union territory of India has the highest literacy rate?

- Ans  1. Daman & Diu  
 2. Lakshwadeep  
 3. Puducherry  
 4. Chandigarh

Question ID : 264330116023  
Status : Answered  
Chosen Option : 2

Q.17 Abhinandan Saroja National Award was started on the birthday of \_\_\_\_\_.

- Ans  1. Padma Bhushan Saroja Nair  
 2. Padma Shree Saroja Vishwanath  
 3. Padma Bhushan Saroja Murthy  
 4. Padma Bhushan Saroja Vaidyanathan

Question ID : 264330115814  
Status : Not Answered  
Chosen Option : --

Q.18 Pradhan Mantri Kaushal Vikas Yojana (PMKVY) is the flagship scheme of the \_\_\_\_\_.

- Ans  1. Ministry of Commerce and Industry  
 2. Ministry of Agriculture and Farmers Welfare  
 3. Ministry of Skill Development & Entrepreneurship.  
 4. Ministry of Micro, Small and Medium Enterprises (MSME)

Question ID : 264330116160  
Status : Answered  
Chosen Option : 3

Q.19 \_\_\_\_\_ model was followed in the first five year plan.

- Ans  1. Harrod-Domar  
 2. Integration  
 3. Mahalanobis  
 4. Capital

Question ID : 264330115368  
Status : Answered  
Chosen Option : 1

Q.20 In India, who appoints the Chief Election Commissioner?

- Ans  1. President  
 2. Vice President  
 3. Speaker of Lok Sabha  
 4. Prime Minister

Question ID : 26433074898  
Status : Answered  
Chosen Option : 1

Section : Part-C-Elementary Mathematics

Q.1 A number 'y' when divided by 225 leaves 33 as the remainder. The same number when divided by 15 leaves 'z' as the remainder. The value of z is:

- Ans  1. 1  
 2. 3  
 3. 4  
 4. 2

Question ID : 26433081536  
Status : Not Answered  
Chosen Option : --

Q.2 What is the average of first five prime numbers?

- Ans  1.  $5\frac{2}{5}$   
 2.  $5\frac{3}{5}$   
 3.  $5\frac{1}{5}$   
 4.  $5\frac{4}{5}$

Question ID : 26433079842  
Status : Answered  
Chosen Option : 1

Q.3 Ravi and Sumant can complete a piece of work in 40 and 50 days, respectively. If they work at it on alternate days starting with Ravi on the first day, in how many days will the work get over?

Ans

1.  $44\frac{3}{5}$  days

2.  $42\frac{2}{5}$  days

3.  $44\frac{2}{5}$  days

4.  $44\frac{1}{5}$  days

Question ID : 26433075245

Status : Not Answered

Chosen Option : --

Q.4 By compounding annually, the compound interest on a sum of Rs.4,900 in 2 years is Rs.725. What is the rate of interest per annum?

Ans

1.  $9\frac{1}{7}\%$

2.  $8\frac{6}{7}\%$

3.  $7\frac{1}{7}\%$

4.  $3\frac{1}{2}\%$

Question ID : 26433064920

Status : Not Answered

Chosen Option : --

Q.5 A trader offers an 8% discount on all his goods and still make a 15% profit. If an item is marked with a price of ₹250, the cost price is:

Ans

1. ₹185

2. ₹180

3. ₹200

4. ₹176

Question ID : 26433076326

Status : Not Answered

Chosen Option : --

**Q.6** Krishan bought first and second item for ₹150 and ₹300 respectively. He sold the first item at 20% profit, and the second item at 20% loss. Find his overall profit or loss percentage. (Rounded off to two decimal places)

- Ans
- 1. Profit 13.33%
  - 2. Loss 6.67%
  - 3. Loss 13.33%
  - 4. Profit 6.67%

Question ID : 26433079925  
Status : Answered  
Chosen Option : 4

**Q.7** 12% of the voters in an election did not cast their votes and 2% of the casted votes were declared invalid. In this election, there were only two candidates. The winner by obtaining 46% of the total registered voters defeated his opponent by 1,044 votes. What was the total number of voters registered in the election?

- Ans
- 1. 18125
  - 2. 10440
  - 3. 16750
  - 4. 14400

Question ID : 26433076223  
Status : Not Answered  
Chosen Option : --

**Q.8** What is the LCM of two co-prime numbers whose product is 323?

- Ans
- 1. 161.5
  - 2. 646
  - 3. 323
  - 4. 1

Question ID : 26433075049  
Status : Answered  
Chosen Option : 3

**Q.9** A certain number is added to each of the numbers 11,15,19 and 25. After addition, these numbers are in proportional. What is the number added?

- Ans
- 1. 5
  - 2. 3
  - 3. 6
  - 4. 4

Question ID : 26433075671  
Status : Answered  
Chosen Option : 1



Q.10 The average of 29 observations is 40. If the average of the first 15 observations is 38, and that of the last 15 observations is 45, then the 15<sup>th</sup> observation is:

- Ans
- 1. 30
  - 2. 29.5
  - 3. 0
  - 4. 85

Question ID : 26433075431  
Status : Answered  
Chosen Option : 1

Q.11 The marked price of an item was Rs. 4000 but the shopkeeper offered a double discount of 5 percent and 7 percent. In how much did he finally sell the item?

- Ans
- 1. Rs. 3948
  - 2. Rs. 3872
  - 3. Rs. 3534
  - 4. Rs. 3665

Question ID : 264330116729  
Status : Answered  
Chosen Option : 3

Q.12 Two friends are running on a circular track of 720 m. They started from the same point and are moving in the same direction with speeds of 1.5 m/s and 3.5 m/s. After how much time will they cross each other for the second time?

- Ans
- 1. 12 minutes
  - 2. 3.5 minutes
  - 3. 7 minutes
  - 4. 10 minutes

Question ID : 26433073113  
Status : Answered  
Chosen Option : 1

Q.13 A sum of P was borrowed and paid back in three equal yearly instalments, each of ₹30,000. If the rate of interest was 5% compounded annually, then the value of P (approximate) is:

- Ans
- 1. ₹80,597
  - 2. ₹81,697
  - 3. ₹81,597
  - 4. ₹80,697

Question ID : 26433079805  
Status : Not Answered  
Chosen Option : --

Q.14 A can do a piece of work in 51 days and B can do the same work in 34 days. Find the time required to complete the same work if they work on alternate days and A starts the work.

- Ans  1. 44 days  
 2. 41 days  
 3. 46 days  
 4. 42 days

Question ID : 264330116844  
Status : Not Answered  
Chosen Option : --

Q.15 What should be added to the each numbers 9, 22, 14, and 32 so that the obtained numbers are proportional?

- Ans  1. 6  
 2. 3  
 3. 5  
 4. 4

Question ID : 26433080325  
Status : Answered  
Chosen Option : 4

Q.16 A shopkeeper sells rice. He buys it at a rate 15% less than the selling price. His total sales value for a month is Rs.5,50,000 and he pays Rs.8,000 as rent of the shop at the start of the month. His profit percentage in the month is \_\_\_\_\_.

- Ans  1. 14.5%  
 2. 15.7%  
 3. 17.5%  
 4. 12.7%

Question ID : 26433071252  
Status : Not Answered  
Chosen Option : --

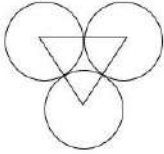
Q.17 Ramesh and Naresh start running at speeds of 26 km/h and 18 km/h respectively towards each other, they meet after one hour and 45 minutes. How far (in metres) were they from each other when they started running?

- Ans  1. 75000  
 2. 77000  
 3. 66000  
 4. 65000

Question ID : 26433064997  
Status : Not Answered  
Chosen Option : --

**Q.18** In the given figure three circles, each of radius 3.5 cm are placed in such a way that each circle touches the other two.

The area of the portion enclosed by the circles is: (Up to two decimal places) (Use  $\pi = \frac{22}{7}$ )



- Ans  1. 1.97 cm<sup>2</sup>  
 2. 3.42 cm<sup>2</sup>  
 3. 2.34 cm<sup>2</sup>  
 4. 1.48 cm<sup>2</sup>

Question ID : 26433075895  
Status : Not Answered  
Chosen Option : --

**Q.19** If the radius of a cylinder is 7 m and its total surface area is 440 m<sup>2</sup>, then find the height of the cylinder. (Use  $\pi = 22/7$ )

- Ans  1. 3 m  
 2. 7 m  
 3. 4 m  
 4. 5 m

Question ID : 26433076385  
Status : Answered  
Chosen Option : 1

**Q.20** In an assembly election, a candidate got 72% of the total valid votes. 1.2% of the total votes were declared invalid. If the total number of voters is 3,32,000, then the number of valid votes polled in favour of this candidate is: (Consider integral part only)

- Ans  1. 337877  
 2. 136188  
 3. 236171  
 4. 133666

Question ID : 26433081015  
Status : Answered  
Chosen Option : 1

Section : Part-D-English

**Q.1** Identify the correctly spelt sentence.

- Ans  1. It is believed that a catarpillar can become a butterfly.  
 2. It is believed that a caterpillar can become a butterfly.  
 3. It is believed that a catterpillar can become a butterfly.  
 4. It is believed that a caterpillar can become a butterfly.

Question ID : 26433072830  
Status : Not Answered  
Chosen Option : --

Q.2 Select the most appropriate synonym of the given word.

Adversity

- Ans  1. Misfortune  
 2. Allegiance  
 3. Anxiety  
 4. Progress

Question ID : 26433073430  
Status : Not Answered  
Chosen Option : --

Q.3 Select the most appropriate option that can substitute the underlined segment in the given sentence.

The flyover that connecting the two cities is broken.

- Ans  1. has been connected  
 2. connects  
 3. has connect  
 4. had connect

Question ID : 26433091868  
Status : Not Answered  
Chosen Option : --

Q.4 Select the most appropriate ANTONYM of the italicised word in the given sentence.

The *miser* hated spending money.

- Ans  1. spendthrift  
 2. tightwad  
 3. scrooge  
 4. skinflint

Question ID : 26433096208  
Status : Not Answered  
Chosen Option : --

Q.5 Select the most appropriate meaning of the given idiom.

Wrangle for an ass's shadow

- Ans  1. Losing temper easily  
 2. Making false allegations  
 3. Argue over petty issues  
 4. Fighting for a just cause

Question ID : 26433072438  
Status : Not Answered  
Chosen Option : --

Q.6 Select the most appropriate synonym of the given word.

**Bargain**

- Ans  1. Alert  
 2. Revoke  
 3. Deal  
 4. Real

Question ID : 26433072185  
Status : Not Answered  
Chosen Option : --

Q.7 Select the correct pair of words for the blanks in the given sentence.

My teacher asked me to read \_\_\_\_\_ and also \_\_\_\_\_ my best friend to celebrate his birthday in the school.

- Ans  1. allowed; aloud  
 2. aloud; allowed  
 3. a loud; aloud  
 4. loud; allow

Question ID : 26433060542  
Status : Not Answered  
Chosen Option : --

Q.8 Select the most appropriate option to fill in the blank.

The cloth is \_\_\_\_\_ to touch so it is not suitable for apparels.

- Ans  1. soft  
 2. irregular  
 3. smooth  
 4. coarse

Question ID : 26433074067  
Status : Not Answered  
Chosen Option : --

Q.9 Select the most appropriate option to substitute the underlined segment in the given sentence.

They have decided to visit Konark, have they?

- Ans  1. is it?  
 2. haven't they?  
 3. do they?  
 4. don't they?

Question ID : 26433088483  
Status : Not Answered  
Chosen Option : --

Q.10 Select the most appropriate ANTONYM of the given word.

Eradicate

- Ans  1. Culminate  
 2. Abolish  
 3. Conserve  
 4. Deteriorate

Question ID : 26433071970  
Status : Not Answered  
Chosen Option : --

Q.11 Select the most appropriate ANTONYM of the given word.

Quietness

- Ans  1. Speed  
 2. Kindness  
 3. Agitation  
 4. Slowness

Question ID : 26433073801  
Status : Not Answered  
Chosen Option : --

Q.12 Select the INCORRECTLY spelt word.

- Ans  1. Percist  
 2. Conceive  
 3. Strict  
 4. Repair

Question ID : 26433073499  
Status : Not Answered  
Chosen Option : --

Q.13 The following sentence has been divided into parts. One of them may contain an error.

Select the part that contains the error from the given options. If you don't find any error, mark 'No error' as your answer.

If the charge that he conspired / to raze a building is valid,/ there is great deal to answer for.

- Ans  1. No error  
 2. there is great deal to answer for  
 3. If the charge that he conspired  
 4. to raze a building is valid

Question ID : 264330114509  
Status : Not Answered  
Chosen Option : --

**Q.14** Select the most appropriate option to fill in the blank.

Indian society is a complex mix of \_\_\_\_\_ cultures, people and languages.

- Ans  1. diversity  
 2. diverse  
 3. diverges  
 4. diversion

Question ID : 26433072731  
Status : Not Answered  
Chosen Option : --

**Q.15** Select the most appropriate meaning of the given idiom.

**Snake in the grass**

- Ans  1. Friendly person  
 2. Treacherous person  
 3. Loyal person  
 4. Clever person

Question ID : 26433072277  
Status : Not Answered  
Chosen Option : --

**Comprehension:**

In the following passage, some words have been deleted. Read the passage carefully and select the most appropriate option to fill in each blank.

The death penalty, often known as capital (1)\_\_\_\_\_, is the most severe form of punishment that may be meted out to an individual under any criminal legislation in (2)\_\_\_\_\_ anywhere in the world. The legal (3)\_\_\_\_\_ through which the state uses its power to take an individual's life is known as the death penalty. It has (4)\_\_\_\_\_ since the establishment of the State itself. The (5)\_\_\_\_\_ of independence heralded the beginning of a new era in India's judicial system.

**SubQuestion No : 16**

**Q.16** Select the most appropriate option to fill in blank number 1.

- Ans  1. loss  
 2. gain  
 3. punishment  
 4. attainment

Question ID : 26433060989  
Status : Not Answered  
Chosen Option : --

**Comprehension:**

In the following passage, some words have been deleted. Read the passage carefully and select the most appropriate option to fill in each blank.

The death penalty, often known as capital (1)\_\_\_\_\_, is the most severe form of punishment that may be meted out to an individual under any criminal legislation in (2)\_\_\_\_\_ anywhere in the world. The legal (3)\_\_\_\_\_ through which the state uses its power to take an individual's life is known as the death penalty. It has (4)\_\_\_\_\_ since the establishment of the State itself. The (5)\_\_\_\_\_ of independence heralded the beginning of a new era in India's judicial system.

**SubQuestion No : 17**

**Q.17 Select the most appropriate option to fill in blank number 2.**

- Ans
- 1. persistence
  - 2. maintenance
  - 3. resistance
  - 4. existence

Question ID : 26433060990

Status : Not Answered

Chosen Option : --

**Comprehension:**

In the following passage, some words have been deleted. Read the passage carefully and select the most appropriate option to fill in each blank.

The death penalty, often known as capital (1)\_\_\_\_\_, is the most severe form of punishment that may be meted out to an individual under any criminal legislation in (2)\_\_\_\_\_ anywhere in the world. The legal (3)\_\_\_\_\_ through which the state uses its power to take an individual's life is known as the death penalty. It has (4)\_\_\_\_\_ since the establishment of the State itself. The (5)\_\_\_\_\_ of independence heralded the beginning of a new era in India's judicial system.

**SubQuestion No : 18**

**Q.18 Select the most appropriate option to fill in blank number 3.**

- Ans
- 1. custody
  - 2. intention
  - 3. lawyer
  - 4. method

Question ID : 26433060991

Status : Not Answered

Chosen Option : --



**Comprehension:**

In the following passage, some words have been deleted. Read the passage carefully and select the most appropriate option to fill in each blank.

The death penalty, often known as capital (1)\_\_\_\_\_, is the most severe form of punishment that may be meted out to an individual under any criminal legislation in (2)\_\_\_\_\_ anywhere in the world. The legal (3)\_\_\_\_\_ through which the state uses its power to take an individual's life is known as the death penalty. It has (4)\_\_\_\_\_ since the establishment of the State itself. The (5)\_\_\_\_\_ of independence heralded the beginning of a new era in India's judicial system.

**SubQuestion No : 19**

**Q.19** Select the most appropriate option to fill in blank number 4.

- Ans  1. considered  
 2. authorised  
 3. existed  
 4. published

Question ID : 26433060992

Status : Not Answered

Chosen Option : --

**Comprehension:**

In the following passage, some words have been deleted. Read the passage carefully and select the most appropriate option to fill in each blank.

The death penalty, often known as capital (1)\_\_\_\_\_, is the most severe form of punishment that may be meted out to an individual under any criminal legislation in (2)\_\_\_\_\_ anywhere in the world. The legal (3)\_\_\_\_\_ through which the state uses its power to take an individual's life is known as the death penalty. It has (4)\_\_\_\_\_ since the establishment of the State itself. The (5)\_\_\_\_\_ of independence heralded the beginning of a new era in India's judicial system.

**SubQuestion No : 20**

**Q.20** Select the most appropriate option to fill in blank number 5.

- Ans  1. enlightenment  
 2. birth  
 3. end  
 4. verity

Question ID : 26433060993

Status : Not Answered

Chosen Option : --

Section : Part-D-Hindi

**Q.1** “यह दवा रोग में समूल से नष्ट करती है।”

उपरोक्त वाक्य में कारक सम्बन्धी त्रुटि पहचानकर निम्नलिखित में से शुद्ध वाक्य चुनिए।

- Ans  1. यह दवा रोग को समूल नष्ट करती है।  
 2. यह दवा रोग को समूल से नष्ट करती है।  
 3. यह दवा रोग के लिए मूल से नष्ट करती है।  
 4. यह दवा रोग पर मूल से नष्ट करती है।

Question ID : 26433066971

Status : Not Answered

Chosen Option : --

Q.2 'नमन पुस्तक पढ़ता है।' इस वाक्य का कर्मवाच्य में रूपांतरण होगा -

- Ans
- 1. नमन पुस्तक पढ़ रहा है।
  - 2. नमन पुस्तक पढ़ेगा।
  - 3. नमन द्वारा पुस्तक पढ़ी गई।
  - 4. नमन से पुस्तक पढ़ी नहीं जाती।

Question ID : 26433062321  
Status : Not Answered  
Chosen Option : --

Q.3 'जिसकी जानकारी बहुत अधिक हो' वाक्यांश के लिए एक शब्द क्या होगा?

- Ans
- 1. विज्ञ
  - 2. अज्ञान
  - 3. अज्ञ
  - 4. अज

Question ID : 26433065728  
Status : Answered  
Chosen Option : 1

Q.4 निम्न वाक्य में रेखांकित शब्द-समूह के लिए सर्वाधिक उपयुक्त विकल्प चुनें।  
जो कम जानता है, वही अधिक उछलता है।

- Ans
- 1. विज्ञ
  - 2. विज्ञानी
  - 3. अल्पज्ञ
  - 4. जिज्ञासु

Question ID : 26433062285  
Status : Answered  
Chosen Option : 3

Q.5 निम्नलिखित शब्दों में से कौन सा शब्द अनेकार्थी शब्द है?

- Ans
- 1. अर्चना
  - 2. उपहार
  - 3. फल
  - 4. पूजा

Question ID : 26433091319  
Status : Answered  
Chosen Option : 2

Q.6 'कुलश्रेष्ठ \_\_\_\_\_।' उपर्युक्त वाक्य में रिक्त स्थान के लिए उपयुक्त विकल्प निम्न में से क्या होगा?

- Ans
- 1. का अर्थ होता है कुल में वृद्ध
  - 2. का अर्थ होता है कुल में बड़ा
  - 3. का अर्थ होता है कुल में श्रेष्ठ
  - 4. का अर्थ होता है कुल में छोटा

Question ID : 26433067039  
Status : Answered  
Chosen Option : 3

Q.7 निम्न में से कौन-सा शब्द 'आसमान' का पर्यायवाची शब्द है?

- Ans
- 1. आकाश
  - 2. दहन
  - 3. द्रुत
  - 4. प्रभात

Question ID : 26433067084  
Status : Answered  
Chosen Option : 1

Q.8 'आज कल सभी के पास स्मार्ट फोन होना आम बात है।' वाक्य में प्रयुक्त 'आम' शब्द निम्न में से किस अर्थ को व्यक्त करता है?

- Ans
- 1. सभी
  - 2. अच्छी
  - 3. आम का फल
  - 4. सामान्य

Question ID : 26433080913  
Status : Answered  
Chosen Option : 4

Q.9 यह आश्रम अत्यंत शांत है। उपरोक्त वाक्य में रेखांकित शब्द के उचित पर्यायवाची शब्द का चयन विकल्पों में से कीजिए।

- Ans
- 1. मधवा
  - 2. रासभ
  - 3. रैन
  - 4. कुटी

Question ID : 26433079624  
Status : Answered  
Chosen Option : 4

Q.10 'आस्तीन का सांप' मुहावरे का सही अर्थ होगा -

- Ans
- 1. सांप पालना
  - 2. कपटी मित्र
  - 3. बगल में सांप रहना
  - 4. शातिर मित्र

Question ID : 26433062609  
Status : Answered  
Chosen Option : 2

Q.11 निम्नलिखित वाक्य के रिक्त स्थान में सबसे उपयुक्त मुहावरा क्या होगा?  
'वह तो अपनी माँ की \_\_\_\_\_ है।'

- Ans
- 1. आँखों का तारा
  - 2. अकल का दुश्मन
  - 3. धुन का पक्का
  - 4. तिल का ताड़

Question ID : 26433066722  
Status : Answered  
Chosen Option : 1

Q.12 वर्तनी की दृष्टि से दिए गए वाक्य के अशुद्ध भाग का चयन कीजिए-  
विदेश में मेरे मरने पर मेरी अस्थियाँ इलाहाबाद भेज दी जाएँ।

- Ans
- 1. मरने पर मेरी
  - 2. अस्थियाँ इलाहाबाद
  - 3. भेज दी जाएँ।
  - 4. विदेश में मेरे

Question ID : 26433062884  
Status : Answered  
Chosen Option : 3

Q.13 निम्नलिखित वाक्य में प्रयुक्त अशुद्ध शब्द पहचानें।  
'सेनिक सदैव सीमा की सुरक्षा के लिए तत्पर रहते हैं।'

- Ans
- 1. सेनिक
  - 2. सदैव
  - 3. सुरक्षा
  - 4. तत्पर

Question ID : 26433066825  
Status : Answered  
Chosen Option : 2

Q.14 उसने नहाने के बाद भोजन किया।  
उपरोक्त वाक्य में रेखांकित पद के बदले उचित पूर्वकालिक क्रिया पद भरकर वाक्य पूर्ण कीजिए।

- Ans
- 1. नहाया
  - 2. नहलवाया
  - 3. नहाना और
  - 4. नहाकर

Question ID : 26433063042  
Status : Answered  
Chosen Option : 4

Q.15 निम्नलिखित वाक्यांश के लिए उपयुक्त सार्थक शब्द क्या होगा?  
तेज गति से चलने वाला

- Ans
- 1. कर्मठ
  - 2. प्रगतिशील
  - 3. बलवान
  - 4. द्रुतगामी

Question ID : 26433065764  
Status : Answered  
Chosen Option : 4

**Comprehension:**

निम्नलिखित गद्यांश में कुछ शब्दों को हटा दिया गया है। दिए गए विकल्पों की सहायता से रिक्त स्थानों की पूर्ति कीजिए। प्रत्येक संख्या के लिए सबसे उपयुक्त विकल्प का चयन कीजिए।  
मनुष्य को गुण, कर्म और स्वभाव से 1. \_\_\_\_\_ प्रकृति वाला प्राणी माना जाता है; यद्यपि हर आदमी के 2. \_\_\_\_\_ कोने में अज्ञात रूप से एक 3. \_\_\_\_\_ प्राणी भी छिपा रहा करता है। प्रायः मनुष्य भरसक चेष्टा कर के भी उसे जागने नहीं देता। जब किसी कारणवश वह जाग ही पड़ता है, तभी 4. \_\_\_\_\_ संघर्षात्मक क्रिया-प्रतिक्रियाओं का भी 5. \_\_\_\_\_ हुआ करता है। उन्हीं के घर्षण-प्रत्याघर्षण से उत्पन्न हुआ करती है युद्धों की ज्वाला।

**SubQuestion No : 16**

Q.16 रिक्त स्थान 1 की पूर्ति के लिए सबसे उपयुक्त विकल्प का चयन करें।

- Ans
- 1. जंगली
  - 2. क्रोधी
  - 3. अभिमानी
  - 4. शांत

Question ID : 264330110909  
Status : Answered  
Chosen Option : 1

**Comprehension:**

निम्नलिखित गद्यांश में कुछ शब्दों को हटा दिया गया है। दिए गए विकल्पों की सहायता से रिक्त स्थानों की पूर्ति कीजिए। प्रत्येक संख्या के लिए सबसे उपयुक्त विकल्प का चयन कीजिए।  
मनुष्य को गुण, कर्म और स्वभाव से 1. \_\_\_\_\_ प्रकृति वाला प्राणी माना जाता है; यद्यपि हर आदमी के 2. \_\_\_\_\_ कोने में अज्ञात रूप से एक 3. \_\_\_\_\_ प्राणी भी छिपा रहा करता है। प्रायः मनुष्य भरसक चेष्टा कर के भी उसे जागने नहीं देता। जब किसी कारणवश वह जाग ही पड़ता है, तभी 4. \_\_\_\_\_ संघर्षात्मक क्रिया-प्रतिक्रियाओं का भी 5. \_\_\_\_\_ हुआ करता है। उन्हीं के घर्षण-प्रत्याघर्षण से उत्पन्न हुआ करती है युद्धों की ज्वाला।

**SubQuestion No : 17**

Q.17 रिक्त स्थान 2 की पूर्ति के लिए सबसे उपयुक्त विकल्प का चयन करें।

- Ans  1. बाहारी  
 2. भीतरी  
 3. बाहरी  
 4. बाह्य

Question ID : 264330110910

Status : Answered

Chosen Option : 2

**Comprehension:**

निम्नलिखित गद्यांश में कुछ शब्दों को हटा दिया गया है। दिए गए विकल्पों की सहायता से रिक्त स्थानों की पूर्ति कीजिए। प्रत्येक संख्या के लिए सबसे उपयुक्त विकल्प का चयन कीजिए।  
मनुष्य को गुण, कर्म और स्वभाव से 1. \_\_\_\_\_ प्रकृति वाला प्राणी माना जाता है; यद्यपि हर आदमी के 2. \_\_\_\_\_ कोने में अज्ञात रूप से एक 3. \_\_\_\_\_ प्राणी भी छिपा रहा करता है। प्रायः मनुष्य भरसक चेष्टा कर के भी उसे जागने नहीं देता। जब किसी कारणवश वह जाग ही पड़ता है, तभी 4. \_\_\_\_\_ संघर्षात्मक क्रिया-प्रतिक्रियाओं का भी 5. \_\_\_\_\_ हुआ करता है। उन्हीं के घर्षण-प्रत्याघर्षण से उत्पन्न हुआ करती है युद्धों की ज्वाला।

**SubQuestion No : 18**

Q.18 रिक्त स्थान 3 की पूर्ति के लिए सबसे उपयुक्त विकल्प का चयन करें।

- Ans  1. नभचर  
 2. थलचर  
 3. जलचर  
 4. हिंसक

Question ID : 264330110911

Status : Answered

Chosen Option : 4

**Comprehension:**

निम्नलिखित गद्यांश में कुछ शब्दों को हटा दिया गया है। दिए गए विकल्पों की सहायता से रिक्त स्थानों की पूर्ति कीजिए। प्रत्येक संख्या के लिए सबसे उपयुक्त विकल्प का चयन कीजिए।  
मनुष्य को गुण, कर्म और स्वभाव से 1. \_\_\_\_\_ प्रकृति वाला प्राणी माना जाता है; यद्यपि हर आदमी के 2. \_\_\_\_\_ कोने में अज्ञात रूप से एक 3. \_\_\_\_\_ प्राणी भी छिपा रहा करता है। प्रायः मनुष्य भरसक चेष्टा कर के भी उसे जागने नहीं देता। जब किसी कारणवश वह जाग ही पड़ता है, तभी 4. \_\_\_\_\_ संघर्षात्मक क्रिया-प्रतिक्रियाओं का भी 5. \_\_\_\_\_ हुआ करता है। उन्हीं के घर्षण-प्रत्याघर्षण से उत्पन्न हुआ करती है युद्धों की ज्वाला।

**SubQuestion No : 19**

Q.19 रिक्त स्थान 4 की पूर्ति के लिए सबसे उपयुक्त विकल्प का चयन करें।

- Ans  1. कभी कभी  
 2. तरह-तरह के  
 3. इधर-उधर  
 4. आस-पास

Question ID : 264330110912

Status : Answered

Chosen Option : 1

**Comprehension:**

निम्नलिखित गद्यांश में कुछ शब्दों को हटा दिया गया है। दिए गए विकल्पों की सहायता से रिक्त स्थानों की पूर्ति कीजिए। प्रत्येक संख्या के लिए सबसे उपयुक्त विकल्प का चयन कीजिए।  
मनुष्य को गुण, कर्म और स्वभाव से 1. \_\_\_\_\_ प्रकृति वाला प्राणी माना जाता है; यद्यपि हर आदमी के 2. \_\_\_\_\_ कोने में अज्ञात रूप से एक 3. \_\_\_\_\_ प्राणी भी छिपा रहा करता है। प्रायः मनुष्य भरसक चेष्टा कर के भी उसे जागने नहीं देता। जब किसी कारणवश वह जाग ही पड़ता है, तभी 4. \_\_\_\_\_ संघर्षात्मक क्रिया-प्रतिक्रियाओं का भी 5. \_\_\_\_\_ हुआ करता है। उन्हीं के घर्षण-प्रत्याघर्षण से उत्पन्न हुआ करती है युद्धों की ज्वाला।

**SubQuestion No : 20**

Q.20 रिक्त स्थान 5 की पूर्ति के लिए सबसे उपयुक्त विकल्प का चयन करें।

- Ans  1. मृत्यु  
 2. जन्म  
 3. समाप्त  
 4. अंत

Question ID : 264330110913

Status : Answered

Chosen Option : 1

# Constable GD in CAPFs SSF Rifleman GD in Assam Rifles and Sepoy in NCB Examination 2022

Roll Number	KD Job Updates
Candidate Name	KD Job Updates
Venue Name	iON Digital Zone iDZ 1 Sector 62
Exam Date	27/01/2023
Exam Time	9:00 AM - 10:00 AM
Subject	Constable GD Examination 2022

Section : Part-A-General Intelligence and Reasoning

Q.1 Which letter cluster will replace the question mark (?) to complete the given series?

HSCQ, JVZR, ?, NBTT, PEQU

- Ans  1. LPXS  
 2. LYWS  
 3. LTYT  
 4. LQGT

Question ID : 26433079426

Status : Answered

Chosen Option : 2

Q.2 In this question, three statements are given, followed by two conclusions numbered I and II. Assuming the statements to be true, even if they seem to be at variance with commonly known facts, decide which of the conclusions logically follows/follow from the statements.

Statements:

All leaves are plants.

All plants are trees.

All trees are big.

Conclusions:

I. Some trees are leaves.

II. All leaves are big.

- Ans  1. Only conclusion I follows.  
 2. Both conclusions I and II follow.  
 3. Only conclusion II follows.  
 4. Neither conclusion I nor II follows.

Question ID : 26433070385

Status : Answered

Chosen Option : 1



Q.3 Six students A, B, C, D, E and F are sitting around a circular table, all facing opposite to the centre. D is to the immediate right of E, who is to the immediate right of F. A is the immediate neighbour of D and C. Who among the following is sitting second to the left of E?

- Ans
- 1. A
  - 2. F
  - 3. B
  - 4. C

Question ID : 26433068488  
Status : Answered  
Chosen Option : 3

Q.4 Which of the mathematical signs should be interchanged in the below equation to make it mathematically correct?

$$15 \div 5 \times 27 + 3 - 9 = 51$$

- Ans
- 1. + and ×
  - 2. ÷ and ×
  - 3. ÷ and +
  - 4. + and -

Question ID : 264330114176  
Status : Answered  
Chosen Option : 3

Q.5 Select the set in which the numbers are related in the same way as are the numbers of the following set.

(NOTE : Operations should be performed on the whole numbers, without breaking down the numbers into its constituent digits. E.g. 13 – Operations on 13 such as adding /subtracting/multiplying etc. to 13 can be performed. Breaking down 13 into 1 and 3 and then performing mathematical operations on 1 and 3 is NOT allowed)

(264, 43, 19)

(132, 27, 15)

- Ans
- 1. (331, 50, 29)
  - 2. (240, 59, 39)
  - 3. (176, 39, 23)
  - 4. (151, 63, 52)

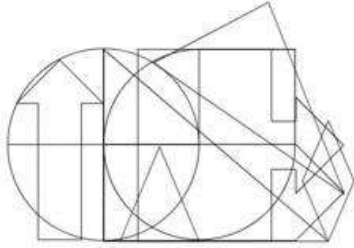
Question ID : 26433076479  
Status : Not Answered  
Chosen Option : --

Q.6 In a certain code language, 'HOUSE' is coded as IQVUF and 'GARDEN' is coded as HCSFFP. How will 'ORANGE' be coded in that language?

- Ans
- 1. PSBOHF
  - 2. LIZMTV
  - 3. QSCOIF
  - 4. PTBPHG

Question ID : 26433074515  
Status : Answered  
Chosen Option : 4

Q.7 Select the option figure which is embedded in the given figure. (Rotation is NOT allowed)



Ans

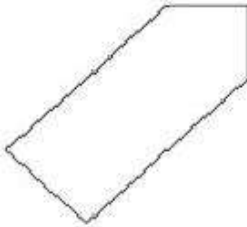
✓ 1.



✗ 2.



✗ 3.



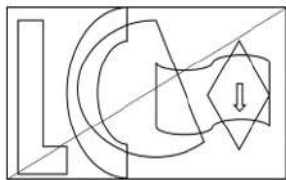
✗ 4.



Question ID : 26433085746  
Status : Answered  
Chosen Option : 2

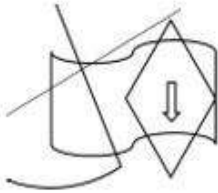
KD Job Updates

Q.8 Select the option figure which is embedded in the given figure. (Rotation is NOT allowed).

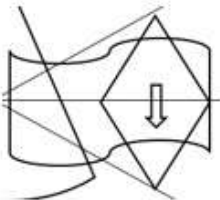


Ans

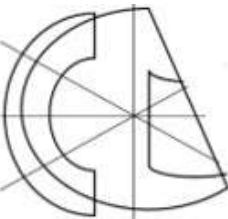
✓ 1.



✗ 2.



✗ 3.



✗ 4.



Question ID : 26433089775

Status : Answered

Chosen Option : 1

Q.9 Which of the following numbers will replace the question mark (?) in the given series?  
946 , 721 , 552 , ? , 350 , 301

Ans ✗ 1. 439

✗ 2. 442

✓ 3. 431

✗ 4. 445

Question ID : 26433089791

Status : Answered

Chosen Option : 3

Q.10 Which of the mathematical signs should be interchanged in the below equation to make it mathematically correct?

$$105 \div 15 \times 54 + 6 - 18 = 222$$

- Ans
- 1. + and -
  - 2.  $\div$  and  $\times$
  - 3. + and  $\times$
  - 4.  $\div$  and +

Question ID : 264330117563  
Status : Marked For Review  
Chosen Option : 4

Q.11 'F – G' means 'F is the brother of G'  
'F \* G' means 'F is the sister of G'  
'F + G' means 'F is the father of G'  
'F \$ G' means 'F is the mother of G'  
If 'H \$ I + J – K', then how is H related to K?

- Ans
- 1. Sister
  - 2. Paternal grandfather
  - 3. Paternal grandmother
  - 4. Father

Question ID : 26433087127  
Status : Answered  
Chosen Option : 3

Q.12 Select the option that is related to the fifth term in the same way as the second term is related to the first term and the fourth term is related to the third term.  
BRIGHT : DTKIJV :: DANGER : FCPIGT :: FOREST : ?

- Ans
- 1. EPQDRS
  - 2. HQTGUV
  - 3. HQTGSU
  - 4. RESTOF

Question ID : 26433087194  
Status : Answered  
Chosen Option : 2

Q.13 Which of the following letters will replace the question mark (?) and complete the following letter series?

B, D, E, G, H, J, ?

- Ans
- 1. M
  - 2. J
  - 3. L
  - 4. K

Question ID : 26433067278  
Status : Answered  
Chosen Option : 4

Q.14 Which option represents the correct order of the given words as they would appear in the English dictionary?

- 1 Difficult
- 2 Differentiate
- 3 Dissolve
- 4 Dilute
- 5 Distance

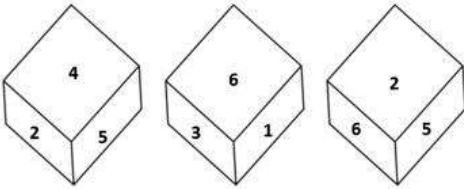
- Ans  1. 1,4,2,3,5
2. 2,1,4,3,5
3. 1,3,2,5,4
4. 2,3,1,4,5

Question ID : 26433069264

Status : Answered

Chosen Option : 2

Q.15 Three different positions of the same dice are shown. Find the number on the face opposite the face showing '1'.



- Ans  1. 6
2. 2
3. 3
4. 4

Question ID : 26433082891

Status : Answered

Chosen Option : 2

Q.16 Seven people Q, R, Y, W, T, E, and U are sitting in a straight row, facing north. Only three people sit to the left of R. U sits at the extreme right. Only two people sit between Q and R. T is the immediate neighbour of R and Y. W is the immediate neighbour of Q and E. Who sits at the centre of the row?

- Ans  1. R
2. E
3. T
4. W

Question ID : 26433092596

Status : Answered

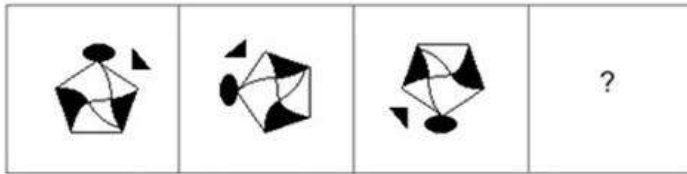
Chosen Option : 1

Q.17 Which number will replace the question mark (?) in the following series?  
32, 34, ?, 212, 850, 4252

- Ans
- 1. 100
  - 2. 120
  - 3. 70
  - 4. 68

Question ID : 26433068972  
Status : Not Answered  
Chosen Option : --

Q.18 Select the figure that will replace the question mark (?) in the following figure series.



Ans

- 1.
- 2.
- 3.
- 4.

Question ID : 26433070421  
Status : Answered  
Chosen Option : 3

**Q.19** Select the option that is related to the fifth letter-cluster in the same way as the second letter-cluster is related to the first letter-cluster and the fourth letter-cluster is related to the third letter-cluster.

NEST: OVHU :: STIR : TGRS :: BAKE : ?

- Ans
- 1. YBLV
  - 2. CZPF
  - 3. YZPV
  - 4. CBLF

Question ID : 26433057481  
Status : Answered  
Chosen Option : 2

**Q.20** In a certain code language, FLASH is written as 'INDUK', and GAMES is written as 'JCPGV'. How will 'TRUST' be written in the same code language?

- Ans
- 1. WTXVW
  - 2. WUXVW
  - 3. WTYVW
  - 4. WTXUW

Question ID : 26433067987  
Status : Answered  
Chosen Option : 4

Section : Part-B-General Knowledge and General awareness

**Q.1** Lui-Ngai-Ni is celebrated as a seed sowing festival by the people of \_\_\_\_\_.

- Ans
- 1. Manipur
  - 2. Assam
  - 3. Arunachal Pradesh
  - 4. Sikkim

Question ID : 264330115081  
Status : Not Answered  
Chosen Option : --

**Q.2** Name the facility available for sale and purchase of goods through internet and fax.

- Ans
- 1. E-Commerce
  - 2. Television
  - 3. Postal Service
  - 4. Telephone Service

Question ID : 264330115597  
Status : Answered  
Chosen Option : 1

Q.3 Anindita Neogy Anaam has been awarded with\_\_\_\_\_.

- Ans  1. Padma Vibhushan  
 2. National Nritya Shiromani  
 3. Abhinandan Saroja National Award  
 4. Padma Bhushan

Question ID : 264330115819  
Status : Answered  
Chosen Option : 2

Q.4 net exports = total exports - \_\_\_\_\_.

- Ans  1. total revenue  
 2. total interest  
 3. total imports  
 4. total income

Question ID : 264330115350  
Status : Answered  
Chosen Option : 3

Q.5 On heating gypsum at \_\_\_\_\_, it losses water molecules and becomes calcium sulphate hemihydrate.

- Ans  1. 115 K  
 2. 173 K  
 3. 215 K  
 4. 373 K

Question ID : 264330115143  
Status : Answered  
Chosen Option : 4

Q.6 Which of the following books was written by Dayanand Saraswati?

- Ans  1. Gitanjali  
 2. Kabuliwala  
 3. Stray Birds  
 4. Satyarth Prakash

Question ID : 264330115727  
Status : Answered  
Chosen Option : 4

Q.7 Which of the following part of Harappan cities was known as citadel?

- Ans  1. North  
 2. East  
 3. West  
 4. South

Question ID : 264330115441  
Status : Answered  
Chosen Option : 2



Q.8 Which is the least populated state in India as per the Census 2011?

- Ans  1. Mizoram  
 2. Goa  
 3. Sikkim  
 4. Punjab

Question ID : 264330116028  
Status : Answered  
Chosen Option : 3

Q.9 The total number of sports in the 36th edition of the National Games 2022 of India were \_\_\_\_\_.

- Ans  1. 40  
 2. 44  
 3. 36  
 4. 50

Question ID : 264330115910  
Status : Answered  
Chosen Option : 2

Q.10 \_\_\_\_\_ are a kind of waste disposal system of the cell.

- Ans  1. Ribosome  
 2. Lysosome  
 3. Mitochondria  
 4. Vacuole

Question ID : 264330115190  
Status : Answered  
Chosen Option : 2

Q.11 Which of the following Articles of the Indian Constitution provides for an independent office of the Comptroller and Auditor General of India?

- Ans  1. Article 148  
 2. Article 134  
 3. Article 158  
 4. Article 160

Question ID : 26433086822  
Status : Answered  
Chosen Option : 1

**Q.12 Prime Minister Narendra Modi flagged off the first Vande Bharat Express Train on which route in South India?**

- Ans**
- 1. Ernakulam – Kollam
  - 2. Mettupalayam – Ooty
  - 3. Mysuru-Chennai
  - 4. Bangalore – Chennai

Question ID : 264330115053  
Status : Answered  
Chosen Option : 4

**Q.13 Prime Minister, Shri Narendra Modi launched the 'Jal Shakti Abhiyan : \_\_\_\_\_' campaign on World Water Day, 2021. Fill the blank space with appropriate option.**

- Ans**
- 1. Conserve the rain
  - 2. Catch the rain
  - 3. Cast the rain
  - 4. Call the rain

Question ID : 264330116165  
Status : Answered  
Chosen Option : 1

**Q.14 The first seven Five Years Plans gave importance to \_\_\_\_\_.**

- Ans**
- 1. Self-Reliance
  - 2. Modernization
  - 3. Equity
  - 4. Increase Export

Question ID : 264330116118  
Status : Answered  
Chosen Option : 1

**Q.15 Pushkar Singh Dhami, who became the chief minister of Uttarakhand state of India in March 2022, belongs to \_\_\_\_\_ political party.**

- Ans**
- 1. Bharatiya Janata Party
  - 2. Communist Party of India
  - 3. Indian National Congress
  - 4. Nationalist Congress Party

Question ID : 264330114895  
Status : Answered  
Chosen Option : 1

Q.16 Which of the following rivers discharge its water into the Arabian sea?

- Ans  1. Mahanadi  
 2. Krishna  
 3. Narmada  
 4. Ganga

Question ID : 26433089664  
Status : Answered  
Chosen Option : 3

Q.17 Who among the following is NOT a Kathak dancer?

- Ans  1. Sitara Devi  
 2. Ananda Shankar  
 3. Gopi Krishna  
 4. Shambu Maharaj

Question ID : 26433071692  
Status : Answered  
Chosen Option : 3

Q.18 Who was the captain of the Indian hockey men's team in the 1936 Berlin Olympics?

- Ans  1. Sayed Jaffar  
 2. Roop Singh  
 3. Ahmed Khan  
 4. Dhyan Chand

Question ID : 26433090749  
Status : Answered  
Chosen Option : 4

Q.19 Under which of the following articles is the abolition of titles recognised?

- Ans  1. Article 19  
 2. Article 20  
 3. Article 18  
 4. Article 17

Question ID : 26433089182  
Status : Answered  
Chosen Option : 3

Q.20 Actual growth rate during tenth five year plan of India was \_\_\_\_\_.

- Ans  1. 7 percent  
 2. 5 percent  
 3. 7.6 percent  
 4. 6.2 percent

Question ID : 264330115361  
Status : Answered  
Chosen Option : 3

**Q.1** If a sum of ₹1,00,000 is to be paid back in two equal annual instalments at  $2\frac{3}{4}$  percent compound interest per annum in case of annual compounding, then what is the value of each instalment? (Rounded off to nearest integral value)

- Ans**
- 1. ₹52,072
  - 2. ₹53,072
  - 3. ₹50,072
  - 4. ₹51,072

Question ID : 26433074226  
Status : Not Answered  
Chosen Option : --

**Q.2** If  $0.25 : x :: 3 : 8$ , then  $x = ?$

- Ans**
- 1. 0.66
  - 2. 0.56
  - 3. 0.55
  - 4. 0.69

Question ID : 26433076376  
Status : Answered  
Chosen Option : 1

**Q.3** P, Q and R can complete a task in 20, 30, and 60 days, respectively. How many days will it take to finish the work if P is helped by Q and R every third day?

- Ans**
- 1. 15
  - 2. 17
  - 3. 12
  - 4. 18

Question ID : 26433065299  
Status : Answered  
Chosen Option : 1

Q.4 Simplify the expression  $2 \div \frac{5}{7}$  of  $(7 + 9 \times 2) + \left[ \frac{15}{6} \div \frac{5}{18} - \frac{24}{12} \right]$ .

- Ans
- 1.  $\frac{47}{125}$
  - 2.  $\frac{166}{7}$
  - 3.  $\frac{889}{125}$
  - 4.  $\frac{146}{7}$

Question ID : 26433082918  
Status : Answered  
Chosen Option : 3

Q.5 25 articles were bought for ₹8,625 and sold for ₹12,675. Find the approximate profit percentage per article.

- Ans
- 1. 32%
  - 2. 47%
  - 3. 39%
  - 4. 45%

Question ID : 26433076176  
Status : Answered  
Chosen Option : 2

Q.6 A discount of 4.5 percent is given to the customer on marked price of an article. A girl bought the article for Rs. 191. The marked price of the article is:

- Ans
- 1. Rs. 300
  - 2. Rs. 200
  - 3. Rs. 500
  - 4. Rs. 400

Question ID : 264330116734  
Status : Answered  
Chosen Option : 2

Q.7 A shopkeeper buys 10 fans and sells 8 fans at the cost price of 10 fans. What is the profit percentage?

- Ans
- 1. 24%
  - 2. 25%
  - 3. 22%
  - 4. 23%

Question ID : 26433074958  
Status : Answered  
Chosen Option : 2

Q.8 If  $A = \frac{2}{3}B$  and  $B = \frac{3}{5}C$ , then what is A:B:C?

- Ans
- 1. 5:3:7
  - 2. 2:3:5
  - 3. 3:5:7
  - 4. 3:2:5

Question ID : 26433075666  
Status : Answered  
Chosen Option : 2

Q.9 Radius of a sphere is 6 cm. The numerical value of the surface area of this sphere is what percentage of the numerical value of its volume?

- Ans
- 1. 40%
  - 2. 50%
  - 3. 30%
  - 4. 60%

Question ID : 26433092172  
Status : Answered  
Chosen Option : 2

Q.10 Average score of 11 players of a cricket team in a one day match is 32. The runs scored by the ten players are 11, 51, 2, 96, 21, 33, 0, 32, 9 and 14. What is the score of 11th player?

- Ans
- 1. 96
  - 2. 91
  - 3. 83
  - 4. 79

Question ID : 26433075096  
Status : Answered  
Chosen Option : 3

Q.11 There are only two candidates in an election. A person got 40 percent votes and lost by 50 votes. Assuming that there were no invalid votes, the total number of votes are :

- Ans
- 1. 150
  - 2. 250
  - 3. 120
  - 4. 450

Question ID : 26433079852  
Status : Answered  
Chosen Option : 2

Q.12 On buying 20 bangles, Riya gets 5 bangles free of cost. What is the discount percentage that Riya gets?

- Ans
- 1. 10%
  - 2. 20%
  - 3. 15%
  - 4. 25%

Question ID : 26433076427  
Status : Answered  
Chosen Option : 2

Q.13 What would be the (Approximate) compound interest (in Rs.) on the principal amount of Rs.10,000 for 2 years at an interest rate of 16% per annum (compounding is done half-yearly)?

- Ans
- 1. 3800
  - 2. 3200
  - 3. 3604
  - 4. 3306

Question ID : 26433071329  
Status : Answered  
Chosen Option : 3

Q.14 A solution consists of 50 litres of pure milk. 10 litres of milk is replaced with equal quantity of water. Again 10 litres of the mixture is substituted by 10 litres of water and this operation is repeated one more time. Find the quantity of milk in the final solution.

- Ans
- 1. 25 litres
  - 2. 25.6 litres
  - 3. 25.4 litres
  - 4. 25.2 litres

Question ID : 26433081549  
Status : Answered  
Chosen Option : 3

Q.15 If a natural number when divided by 2,3, and 4 leaves a remainder of 1 in each case, then what is the smallest possible three digit natural number?

- Ans
- 1. 107
  - 2. 103
  - 3. 109
  - 4. 105

Question ID : 26433075634  
Status : Answered  
Chosen Option : 3

Q.16 A bus covered 60 km at a speed of 15 km/h, 100 km at a speed of 25 km/h and 20 km at a speed of 5 km/h. What is its average speed during the entire journey (in m/sec)?

- Ans
- 1. 15
  - 2.  $\frac{21}{2}$
  - 3. 20
  - 4.  $\frac{25}{6}$

Question ID : 26433075198  
Status : Not Answered  
Chosen Option : --

Q.17 The halves of the diagonals of a rhombus are 75 cm and 90 cm. Find its area.

- Ans
- 1.  $6750 \text{ cm}^2$
  - 2.  $27000 \text{ cm}^2$
  - 3.  $3375 \text{ cm}^2$
  - 4.  $13500 \text{ cm}^2$

Question ID : 26433075743  
Status : Answered  
Chosen Option : 2

Q.18 A thief started running at a speed of 12 m/s, after running for 10 sec a policeman started running to catch the thief in the same direction at a speed of 14.5 m/s. What is the time taken by the policeman to catch the thief?

- Ans
- 1. 36 sec
  - 2. 30 sec
  - 3. 44 sec
  - 4. 48 sec

Question ID : 26433075693  
Status : Not Answered  
Chosen Option : --



**Q.19** In a town there are 5500 people who can vote in an election. If the number of male voters increases by 11% and female voters increases by 20%, then the number of voters becomes 6330. Find the initial number of male and female voters, respectively, in the town.

- Ans  1. 3000, 2500  
 2. 2000, 3500  
 3. 2500, 3000  
 4. 3500, 2000

Question ID : 26433082091  
Status : Not Answered  
Chosen Option : --

**Q.20** When Ashish finishes a certain work, he gets a total wage of Rs. 70. When Kanika finishes the same work, he gets a total wage of Rs. 165. The daily wages of Ashish and Kanika are Rs. 3.5 and Rs. 5.5 respectively. If both of them do it together, what is the cost of the work?

- Ans  1. Rs.108  
 2. Rs.144  
 3. Rs.120  
 4. Rs.140

Question ID : 264330116849  
Status : Not Answered  
Chosen Option : --

Section : Part-D-English

**Q.1** Select the most appropriate option to fill in the blank.

Janaki remains \_\_\_\_\_ while talking about her dark past.

- Ans  1. gracious  
 2. cautious  
 3. dignified  
 4. turbulent

Question ID : 26433071883  
Status : Not Answered  
Chosen Option : --

**Q.2** Identify the MISSPELT word in the following sentence.

In some regions of the world, child poverty remains a serious issue, significantly in relation of the geospatial and living standards in which children grow up.

- Ans  1. issue  
 2. significantly  
 3. geospatial  
 4. regions

Question ID : 26433073661  
Status : Not Answered  
Chosen Option : --

Q.3 Select the most appropriate meaning of the underlined idiom in the following sentence.

Keep an eye on the situation around, and take your decision accordingly.

- Ans
- 1. Ignore
  - 2. Observe continually and carefully
  - 3. Cries over spilt milk
  - 4. Be aggressive with red eyes

Question ID : 26433072513  
Status : Not Answered  
Chosen Option : --

Q.4 The given sentence is divided into three segments. Select the option that has the segment with a grammatical error. If there is no error, select 'no error' as your answer.

It will take / 5 minutes to / preparing a cup of tea.

- Ans
- 1. No error
  - 2. preparing a cup of tea
  - 3. It will take
  - 4. 5 minutes to

Question ID : 26433071858  
Status : Not Answered  
Chosen Option : --

Q.5 Select the most appropriate meaning of the underlined idiom that can be substituted in the following sentence.

My son was disappointed with his failure, but he took heart and tried again

- Ans
- 1. felt encouraged
  - 2. loved dearly
  - 3. was deeply affected
  - 4. cried miserably

Question ID : 26433072236  
Status : Not Answered  
Chosen Option : --

Q.6 Select the most appropriate ANTONYM of the given word.

Accuse

- Ans
- 1. Incriminate
  - 2. Defend
  - 3. Charge
  - 4. Allege

Question ID : 26433073577  
Status : Not Answered  
Chosen Option : --

Q.7 Select the most appropriate option to fill in the blank.

The \_\_\_\_\_ of this beautiful garden is so exciting.

- Ans
- 1. site
  - 2. slight
  - 3. cite
  - 4. sight

Question ID : 26433073932  
Status : Not Answered  
Chosen Option : --

Q.8 Select the most appropriate option to substitute the underlined segment in the given sentence to make it a meaningful sentence. If no substitution is required, select 'No substitution'.

The first step towards the prevention of cybercrimes will obviously to promote awareness about criminal activities and tighten up security.

- Ans
- 1. would obviously been to promote awareness about criminal activities
  - 2. would obviously be to promote awareness about criminal activities
  - 3. No substitution
  - 4. would obviously be to promote awareness for criminal activities

Question ID : 26433092042  
Status : Not Answered  
Chosen Option : --

Q.9 Select the most appropriate homonym to fill in the blank.

These products \_\_\_\_\_ for a long time.

- Ans
- 1. lust
  - 2. last
  - 3. lost
  - 4. least

Question ID : 26433088789  
Status : Not Answered  
Chosen Option : --

Q.10 Complete the sentence by choosing the most appropriate synonym of the underlined word.

When you want to leave, you \_\_\_\_\_ the building.

- Ans
- 1. move in
  - 2. catch
  - 3. jump
  - 4. exit

Question ID : 26433088864  
Status : Not Answered  
Chosen Option : --

Q.11 Select the most appropriate option that can substitute the underlined segment in the given sentence. If there is no need to substitute it, select 'No substitution'.

Many instances of corruption have been reported by authorities posted theyre.

- Ans
- 1. No substitution
  - 2. authorities in which were posted theyre
  - 3. authorities whom were posted theyre
  - 4. authorities posted there

Question ID : 26433091764  
Status : Not Answered  
Chosen Option : --

Q.12 Select the most appropriate ANTONYM of the given word.  
Grumble

- Ans
- 1. Navigate
  - 2. Stray
  - 3. Raise
  - 4. Praise

Question ID : 26433066086  
Status : Not Answered  
Chosen Option : --

Q.13 Select the most appropriate synonym of the given word.

Commerce

- Ans
- 1. Stream
  - 2. Trade
  - 3. Class
  - 4. Bank

Question ID : 26433072350  
Status : Not Answered  
Chosen Option : --

Q.14 Select the INCORRECTLY spelt word.

- Ans
- 1. Spiteful
  - 2. Rotational
  - 3. Magnificentt
  - 4. Debatable

Question ID : 26433073505  
Status : Not Answered  
Chosen Option : --

**Q.15** Select the most appropriate **ANTONYM** for the underlined word in the following sentence.

He is a spendthrift and spends money lavishly.

- Ans
- 1. Careful
  - 2. Wicked
  - 3. Miser
  - 4. Mean

Question ID : 26433093035

Status : Not Answered

Chosen Option : --

**Comprehension:**

In the following passage, some words have been deleted. Read the passage carefully and select the most appropriate option to fill in each blank.

The build up to the 2020 Tokyo Olympics, which (1)\_\_\_\_\_ on July 23 and finished on August 8, as defined by cautious optimism, as well as a slew of (2)\_\_\_\_\_ that came with staging the Games under tight safety standards and without (3)\_\_\_\_\_ during the COVID-19 outbreak. While Indian competitors had shown enough potential to (4)\_\_\_\_\_ expect a big return of medals in the Games, the disappointments of Rio 2016 lingered. What happened was that India delivered its best-ever performance at the Games, beginning with Mirabai Chanu's silver medal in weightlifting on the first day and culminating with Neeraj Chopra's (5)\_\_\_\_\_ gold medal in javelin throw on the country's last day of competition in Tokyo.

**SubQuestion No : 16**

**Q.16** Select the most appropriate option to fill in blank no. 1.

- Ans
- 1. beginning
  - 2. begin
  - 3. began
  - 4. begun

Question ID : 26433058733

Status : Not Answered

Chosen Option : --

**Comprehension:**

In the following passage, some words have been deleted. Read the passage carefully and select the most appropriate option to fill in each blank.

The build up to the 2020 Tokyo Olympics, which (1)\_\_\_\_\_ on July 23 and finished on August 8, as defined by cautious optimism, as well as a slew of (2)\_\_\_\_\_ that came with staging the Games under tight safety standards and without (3)\_\_\_\_\_ during the COVID-19 outbreak. While Indian competitors had shown enough potential to (4)\_\_\_\_\_ expect a big return of medals in the Games, the disappointments of Rio 2016 lingered. What happened was that India delivered its best-ever performance at the Games, beginning with Mirabai Chanu's silver medal in weightlifting on the first day and culminating with Neeraj Chopra's (5)\_\_\_\_\_ gold medal in javelin throw on the country's last day of competition in Tokyo.

**SubQuestion No : 17**

**Q.17 Select the most appropriate option to fill in blank no. 2.**

- Ans
- 1. certainty
  - 2. configuration
  - 3. enjoyment
  - 4. anxiety

Question ID : 26433058734

Status : Not Answered

Chosen Option : --

**Comprehension:**

In the following passage, some words have been deleted. Read the passage carefully and select the most appropriate option to fill in each blank.

The build up to the 2020 Tokyo Olympics, which (1)\_\_\_\_\_ on July 23 and finished on August 8, as defined by cautious optimism, as well as a slew of (2)\_\_\_\_\_ that came with staging the Games under tight safety standards and without (3)\_\_\_\_\_ during the COVID-19 outbreak. While Indian competitors had shown enough potential to (4)\_\_\_\_\_ expect a big return of medals in the Games, the disappointments of Rio 2016 lingered. What happened was that India delivered its best-ever performance at the Games, beginning with Mirabai Chanu's silver medal in weightlifting on the first day and culminating with Neeraj Chopra's (5)\_\_\_\_\_ gold medal in javelin throw on the country's last day of competition in Tokyo.

**SubQuestion No : 18**

**Q.18 Select the most appropriate option to fill in blank no. 3.**

- Ans
- 1. athletes
  - 2. spectators
  - 3. preachers
  - 4. tools

Question ID : 26433058735

Status : Not Answered

Chosen Option : --

**Comprehension:**

In the following passage, some words have been deleted. Read the passage carefully and select the most appropriate option to fill in each blank.

The build up to the 2020 Tokyo Olympics, which (1)\_\_\_\_\_ on July 23 and finished on August 8, as defined by cautious optimism, as well as a slew of (2)\_\_\_\_\_ that came with staging the Games under tight safety standards and without (3)\_\_\_\_\_ during the COVID-19 outbreak. While Indian competitors had shown enough potential to (4)\_\_\_\_\_ expect a big return of medals in the Games, the disappointments of Rio 2016 lingered. What happened was that India delivered its best-ever performance at the Games, beginning with Mirabai Chanu's silver medal in weightlifting on the first day and culminating with Neeraj Chopra's (5)\_\_\_\_\_ gold medal in javelin throw on the country's last day of competition in Tokyo.

**SubQuestion No : 19**

**Q.19 Select the most appropriate option to fill in blank no. 4.**

- Ans
- 1. casually
  - 2. constitutionally
  - 3. authoritatively
  - 4. legitimately

Question ID : 26433058736  
Status : Not Answered  
Chosen Option : --

**Comprehension:**

In the following passage, some words have been deleted. Read the passage carefully and select the most appropriate option to fill in each blank.

The build up to the 2020 Tokyo Olympics, which (1)\_\_\_\_\_ on July 23 and finished on August 8, as defined by cautious optimism, as well as a slew of (2)\_\_\_\_\_ that came with staging the Games under tight safety standards and without (3)\_\_\_\_\_ during the COVID-19 outbreak. While Indian competitors had shown enough potential to (4)\_\_\_\_\_ expect a big return of medals in the Games, the disappointments of Rio 2016 lingered. What happened was that India delivered its best-ever performance at the Games, beginning with Mirabai Chanu's silver medal in weightlifting on the first day and culminating with Neeraj Chopra's (5)\_\_\_\_\_ gold medal in javelin throw on the country's last day of competition in Tokyo.

**SubQuestion No : 20**

**Q.20 Select the most appropriate option to fill in blank no. 5.**

- Ans
- 1. historic
  - 2. insignificant
  - 3. Asiatic
  - 4. non-fictional

Question ID : 26433058737  
Status : Not Answered  
Chosen Option : --

Q.1 नीचे दिए गए वाक्य में प्रयुक्त गलत विभक्ति चिह्न को पहचानकर बताइए कि उसके स्थान पर कौन सा विभक्ति चिह्न सही होगा?  
'अच्छी सेहत को प्रतिदिन योग करना चाहिए।'

- Ans
- 1. द्वारा
  - 2. में
  - 3. के लिए
  - 4. से

Question ID : 26433062866  
Status : Answered  
Chosen Option : 3

Q.2 'रात और संध्या के बीच की वेला' वाक्यांश के लिए सार्थक शब्द है-

- Ans
- 1. भोर
  - 2. गोधूलि
  - 3. पर्णी
  - 4. क्षितिज

Question ID : 26433065868  
Status : Answered  
Chosen Option : 2

Q.3 निम्नलिखित शब्द के सही पर्यायवाची शब्द का चयन विकल्पों में से कीजिए।  
सुंदर

- Ans
- 1. माणिक
  - 2. पीताम्बर
  - 3. भानु
  - 4. ललित

Question ID : 26433066942  
Status : Answered  
Chosen Option : 1

Q.4 हमारे माता-पिता का तो कहना ही यही है कि सबके साथ भला करो, यदि \_\_\_\_\_।  
रिक्त स्थान की पूर्ति उचित मुहावरे द्वारा कीजिए।

- Ans
- 1. परोपकार सर्वोपरि है
  - 2. अपना काम स्वयं करो
  - 3. आप काज महाकाज
  - 4. आप भले तो जग भला

Question ID : 26433062603  
Status : Answered  
Chosen Option : 4



Q.5 निम्नलिखित में से शुद्ध वाक्य है-

- Ans
- 1. हमलोग उत्तर लिखते हैं।
  - 2. हमलोग उत्तर लिखत हैं।
  - 3. हम लोग उत्तर लिखते हैं।
  - 4. हमलोग उतर लिखते हैं।

Question ID : 26433080933  
Status : Answered  
Chosen Option : 3

Q.6 'वह आंख से कुबड़ा है।' इस वाक्य में रेखांकित शब्द के अर्थ स्थान पर उचित शब्द क्या होगा?

- Ans
- 1. दृष्टिहीन
  - 2. गूंगा
  - 3. वाचाल
  - 4. बहरा

Question ID : 26433062203  
Status : Answered  
Chosen Option : 1

Q.7 'अनुराग' का विलोम है-

- Ans
- 1. विराग
  - 2. सुहाग
  - 3. वियोग
  - 4. विहंग

Question ID : 26433062923  
Status : Answered  
Chosen Option : 1

Q.8 'फैला अपने रवि कर जाल।'

उपरोक्त वाक्य में प्रयुक्त 'कर' शब्द निम्न में से किस अर्थ को व्यक्त करता है?

- Ans
- 1. हाथ
  - 2. किरण
  - 3. टैक्स
  - 4. सूँड़

Question ID : 26433069732  
Status : Answered  
Chosen Option : 2

Q.9 'सौ वर्ष का समय' वाक्यांश के लिए एक शब्द होगा-

- Ans  1. शताब्दी  
 2. सहस्राब्दी  
 3. युग  
 4. वार्षिक

Question ID : 26433065733  
Status : Answered  
Chosen Option : 1

Q.10 निम्नलिखित वाक्य में कौन से भाग में त्रुटि है?  
'बिद्वानो का दल आ रहा है।'

- Ans  1. दल  
 2. आ रहा है।  
 3. का  
 4. बिद्वानो

Question ID : 26433063063  
Status : Answered  
Chosen Option : 4

Q.11 निम्नलिखित वाक्य में रेखांकित शब्द के स्थान पर सर्वोचित विकल्प चुनिए।  
'वह इस आशा में विश्राम करता रहा कि मुझसे मुलाकात हो जाएगी।'

- Ans  1. प्रतीक्षा  
 2. विश्वास  
 3. उपासना  
 4. परिश्रम

Question ID : 26433084964  
Status : Answered  
Chosen Option : 1

Q.12 'अनंत विश्व में अनेक देवताओं की कहानियाँ प्रचलित हैं।' इस वाक्य में प्रयुक्त 'अनंत' शब्द निम्न में से किस अर्थ को व्यक्त करता है?

- Ans  1. अंतहीन  
 2. ईश्वर  
 3. शेष  
 4. आकाश

Question ID : 26433069728  
Status : Answered  
Chosen Option : 1

Q.13 निम्नलिखित वाक्य के रिक्त स्थान में सबसे उपयुक्त मुहावरा क्या होगा?  
'बुद्धिजीवी और पत्रकार \_\_\_\_\_ खाते हैं।'

- Ans
- 1. घास की रोटी
  - 2. गेहूँ की रोटी
  - 3. अक्ल की रोटी
  - 4. मक्के की रोटी

Question ID : 26433066734  
Status : Answered  
Chosen Option : 1

Q.14 निम्नलिखित में से किस वाक्य में सर्वनाम सम्बन्धी अशुद्धि है?

- Ans
- 1. तुम यह पुस्तक पढ़ कर देखो।
  - 2. हम अपना काम स्वयं करता हूँ।
  - 3. यह पुस्तक बहुत उपयोगी है।
  - 4. वह अपना और अपनी सखी का काम करेगी।

Question ID : 26433062999  
Status : Answered  
Chosen Option : 2

Q.15 'जो किये गये उपकारों को मानता है' वाक्यांश के लिए एक शब्द \_\_\_\_\_ है।

- Ans
- 1. कृतज्ञ
  - 2. कारीगर
  - 3. कृतघ्न
  - 4. कृपण

Question ID : 26433062938  
Status : Answered  
Chosen Option : 3

#### Comprehension:

निम्नलिखित गद्यांश में कुछ शब्दों को हटा दिया गया है। दिए गए विकल्पों की सहायता से रिक्त स्थानों की पूर्ति कीजिए। प्रत्येक संख्या के लिए सबसे उपयुक्त विकल्प का चयन कीजिए।

"जैसी संगति बैठिये तैसोई फल दीन" उक्ति का अर्थ है-मनुष्य जिस 1. \_\_\_\_\_ में बैठता है, उसे वैसा ही फल मिलता है। बुरे की संगति में 2. \_\_\_\_\_ मिलता है। अच्छे के साथ रहने से अच्छा परिणाम निकलता है। यदि सज्जन 3. \_\_\_\_\_ से घिरा रहेगा तो दुर्जनों के अवगुण उस पर अवश्य प्रभाव छोड़ेंगे। जिन मित्रों के साथ हम रहते हैं, उनके 4. \_\_\_\_\_ से बचना अत्यंत कठिन है। यदि मित्र अच्छे होंगे तो हमें 5. \_\_\_\_\_ की ओर अग्रसर करेंगे।

SubQuestion No : 16

Q.16 रिक्त स्थान 1 की पूर्ति के लिए सबसे उपयुक्त विकल्प का चयन करें।

- Ans
- 1. चौराहे
  - 2. संगति
  - 3. जगह
  - 4. अकेला

Question ID : 264330110867  
Status : Answered  
Chosen Option : 2

**Comprehension:**

निम्नलिखित गद्यांश में कुछ शब्दों को हटा दिया गया है। दिए गए विकल्पों की सहायता से रिक्त स्थानों की पूर्ति कीजिए। प्रत्येक संख्या के लिए सबसे उपयुक्त विकल्प का चयन कीजिए।  
"जैसी संगति बैठिये तैसी फल दीन" उक्ति का अर्थ है-मनुष्य जिस 1. \_\_\_\_\_ में बैठता है, उसे वैसा ही फल मिलता है। बुरे की संगति में 2. \_\_\_\_\_ मिलता है। अच्छे के साथ रहने से अच्छा परिणाम निकलता है। यदि सज्जन 3. \_\_\_\_\_ से घिरा रहेगा तो दुर्जनों के अवगुण उस पर अवश्य प्रभाव छोड़ेंगे। जिन मित्रों के साथ हम रहते हैं, उनके 4. \_\_\_\_\_ से बचना अत्यंत कठिन है। यदि मित्र अच्छे होंगे तो हमें 5. \_\_\_\_\_ की ओर अग्रसर करेंगे।

**SubQuestion No : 17**

Q.17 रिक्त स्थान 2 की पूर्ति के लिए सबसे उपयुक्त विकल्प का चयन करें।

- Ans
- 1. कडवा फल
  - 2. खट्टा फल
  - 3. बुरा फल
  - 4. मीठा फल

Question ID : 264330110868

Status : Answered

Chosen Option : 3

**Comprehension:**

निम्नलिखित गद्यांश में कुछ शब्दों को हटा दिया गया है। दिए गए विकल्पों की सहायता से रिक्त स्थानों की पूर्ति कीजिए। प्रत्येक संख्या के लिए सबसे उपयुक्त विकल्प का चयन कीजिए।  
"जैसी संगति बैठिये तैसी फल दीन" उक्ति का अर्थ है-मनुष्य जिस 1. \_\_\_\_\_ में बैठता है, उसे वैसा ही फल मिलता है। बुरे की संगति में 2. \_\_\_\_\_ मिलता है। अच्छे के साथ रहने से अच्छा परिणाम निकलता है। यदि सज्जन 3. \_\_\_\_\_ से घिरा रहेगा तो दुर्जनों के अवगुण उस पर अवश्य प्रभाव छोड़ेंगे। जिन मित्रों के साथ हम रहते हैं, उनके 4. \_\_\_\_\_ से बचना अत्यंत कठिन है। यदि मित्र अच्छे होंगे तो हमें 5. \_\_\_\_\_ की ओर अग्रसर करेंगे।

**SubQuestion No : 18**

Q.18 रिक्त स्थान 3 की पूर्ति के लिए सबसे उपयुक्त विकल्प का चयन करें।

- Ans
- 1. दुर्जनों
  - 2. शीलवान
  - 3. सज्जनों
  - 4. नेक

Question ID : 264330110869

Status : Answered

Chosen Option : 1

**Comprehension:**

निम्नलिखित गद्यांश में कुछ शब्दों को हटा दिया गया है। दिए गए विकल्पों की सहायता से रिक्त स्थानों की पूर्ति कीजिए। प्रत्येक संख्या के लिए सबसे उपयुक्त विकल्प का चयन कीजिए।  
"जैसी संगति बैठिये तैसी फल दीन" उक्ति का अर्थ है-मनुष्य जिस 1. \_\_\_\_\_ में बैठता है, उसे वैसा ही फल मिलता है। बुरे की संगति में 2. \_\_\_\_\_ मिलता है। अच्छे के साथ रहने से अच्छा परिणाम निकलता है। यदि सज्जन 3. \_\_\_\_\_ से घिरा रहेगा तो दुर्जनों के अवगुण उस पर अवश्य प्रभाव छोड़ेंगे। जिन मित्रों के साथ हम रहते हैं, उनके 4. \_\_\_\_\_ से बचना अत्यंत कठिन है। यदि मित्र अच्छे होंगे तो हमें 5. \_\_\_\_\_ की ओर अग्रसर करेंगे।

**SubQuestion No : 19**

Q.19 रिक्त स्थान 4 की पूर्ति के लिए सबसे उपयुक्त विकल्प का चयन करें।

- Ans  1. प्रभाव  
 2. दुष्प्रभाव  
 3. गौण प्रभाव  
 4. कुप्रभाव

Question ID : 264330110870

Status : Answered

Chosen Option : 2

**Comprehension:**

निम्नलिखित गद्यांश में कुछ शब्दों को हटा दिया गया है। दिए गए विकल्पों की सहायता से रिक्त स्थानों की पूर्ति कीजिए। प्रत्येक संख्या के लिए सबसे उपयुक्त विकल्प का चयन कीजिए।  
"जैसी संगति बैठिये तैसी फल दीन" उक्ति का अर्थ है-मनुष्य जिस 1. \_\_\_\_\_ में बैठता है, उसे वैसा ही फल मिलता है। बुरे की संगति में 2. \_\_\_\_\_ मिलता है। अच्छे के साथ रहने से अच्छा परिणाम निकलता है। यदि सज्जन 3. \_\_\_\_\_ से घिरा रहेगा तो दुर्जनों के अवगुण उस पर अवश्य प्रभाव छोड़ेंगे। जिन मित्रों के साथ हम रहते हैं, उनके 4. \_\_\_\_\_ से बचना अत्यंत कठिन है। यदि मित्र अच्छे होंगे तो हमें 5. \_\_\_\_\_ की ओर अग्रसर करेंगे।

**SubQuestion No : 20**

Q.20 रिक्त स्थान 5 की पूर्ति के लिए सबसे उपयुक्त विकल्प का चयन करें।

- Ans  1. तीव्र  
 2. बुराई  
 3. अच्छाई  
 4. चालाकी

Question ID : 264330110871

Status : Not Answered

Chosen Option : --

# Constable GD in CAPFs SSF Rifleman GD in Assam Rifles and Sepoy in NCB Examination 2022

Roll Number	KD Job Updates
Candidate Name	KD Job Updates
Venue Name	Pawan Online Solutions
Exam Date	27/01/2023
Exam Time	11:45 AM - 12:45 PM
Subject	Constable GD Examination 2022

Section : Part-A-General Intelligence and Reasoning

**Q.1** Read the given statements and conclusions carefully. Assuming that the information given in the statements is true, even if it appears to be at variance with commonly known facts, decide which of the given conclusions logically follow(s) from the statements.

Statements:

- All rats are lions
- Some rats are jackals
- No jackal is mongoose

Conclusions:

- Some jackals are lions
- Some rats are not mongoose
- No mongoose is a lion

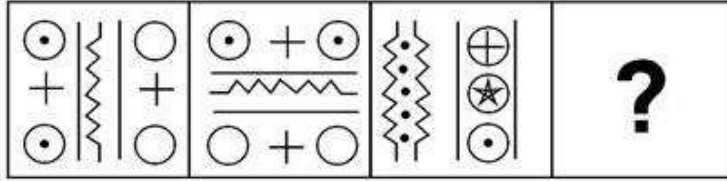
- Ans** ✓ 1. Both conclusions I and II follow  
✗ 2. Only conclusion I follows  
✗ 3. Only conclusion II follows  
✗ 4. Neither conclusion I, II or III follows

Question ID : 26433082662

Status : Answered

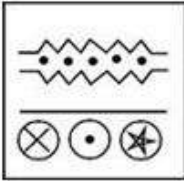
Chosen Option : 1

**Q.2** Find the options which is related to the third figure in the same manner as second figure is related with the first figure.  
(First figure is the leftmost figure.)

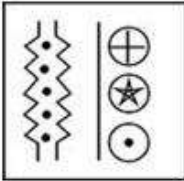


Ans

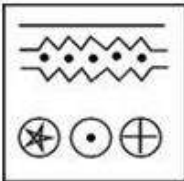
✗ 1.



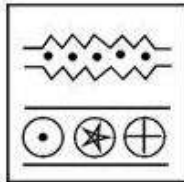
✗ 2.



✗ 3.



✓ 4.



Question ID : 26433078864

Status : Answered

Chosen Option : 4

**Q.3** Which of the following letter-clusters will replace the question mark (?) in the given series?  
SFJW, QHLU, ?, MLPQ, KNRO

Ans ✗ 1. PJNS

✗ 2. OKNR

✗ 3. PJNR

✓ 4. OJNS

Question ID : 26433076446

Status : Answered

Chosen Option : 4

Q.4 In a certain code language, 'BORED' is written as 'YLIVW' and 'FIGHT' is written as 'URTSG'. How will 'PRINT' be written in that language?

- Ans
- 1. FIRNK
  - 2. FJTNK
  - 3. KIRMG
  - 4. KJSMG

Question ID : 26433081511  
Status : Answered  
Chosen Option : 3

Q.5 In a code language, 'corrupt men' is coded as 'vu ka', 'he is corrupt' is coded as 'hu na vu', 'she is serious' is coded as 'po na du', and 'she faints' is coded as 'po gu'. What is the code for the word 'serious'?

- Ans
- 1. hu
  - 2. vu
  - 3. gu
  - 4. du

Question ID : 26433069467  
Status : Answered  
Chosen Option : 2

Q.6 Which of the following numbers will replace the question marks (?) in the given series?

156, 144, 133, 123, 114, ?, 99, ?, 88, 84

- Ans
- 1. 110, 90
  - 2. 109, 91
  - 3. 107, 94
  - 4. 106, 93

Question ID : 26433082867  
Status : Answered  
Chosen Option : 3

Q.7 Which option represents the correct order of the given words as they would appear in the English dictionary?

- 1 branch
- 2 brunch
- 3 bracket
- 4 brass
- 5 bread

- Ans
- 1. 3,1,4,2,5
  - 2. 3,1,5,4,2
  - 3. 1,3,4,5,2
  - 4. 3,1,4,5,2

Question ID : 26433069297  
Status : Answered  
Chosen Option : 4



Q.8 Which two signs, from the given options, should be interchanged to make the given equation correct?

$$210 \div 7 \times 320 \div (16 - 4 \times 15 \times 17) = 15 + 5$$

- Ans
- 1. + and -
  - 2.  $\times$  and -
  - 3.  $\times$  and +
  - 4. + and +

Question ID : 26433082487

Status : Not Attempted and Marked For Review

Chosen Option : --

Q.9 Six friends P, Q, R, S, T and U are sitting around a circular table facing the centre. P sits second to the right of U. R sits third to the right of Q. S and R both are the immediate neighbours of P. Who sits between Q and U?

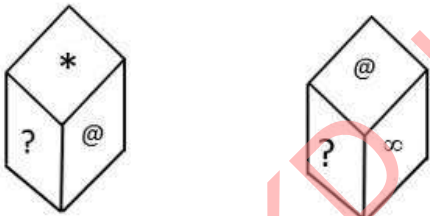
- Ans
- 1. T
  - 2. P
  - 3. R
  - 4. S

Question ID : 26433092773

Status : Answered

Chosen Option : 1

Q.10 Two different positions of the same dice, with the symbols \*, ?, @, %, \$,  $\infty$ , are shown. Find the symbol on the face opposite the face showing '\*'.



- Ans
- 1.  $\infty$
  - 2. \$
  - 3. @
  - 4. %

Question ID : 26433089511

Status : Answered

Chosen Option : 1

Q.11 Select the correct mirror image of the given figure when the mirror is placed at MN as shown below.

cALculATiVe |  
M  
N

Ans

- 1. eViTAIuclAe
- 2. eViTAIuclAe
- 3. eViTAIuclAe
- 4. eViTAIuclAe

Question ID : 26433085551

Status : Answered

Chosen Option : 4

Q.12 P @ Q का अर्थ है 'P, Q की बहन है'  
P & Q का अर्थ है 'P, Q का भाई है'  
P # Q का अर्थ है 'P, Q की माता है'  
यदि A # B @ C & D # E @ F है, तो B, F से किस प्रकार संबंधित है?

- Ans
- 1. नानी
  - 2. मौसी
  - 3. भाई
  - 4. बहन

Question ID : 26433081684

Status : Answered

Chosen Option : 2

Q.13 Which letter-cluster will replace the question mark (?) to complete the given series?  
DFGI, JLMO, PRSU, VXYA, ?

- Ans
- 1. BCDE
  - 2. BDEF
  - 3. BCFG
  - 4. BDEG

Question ID : 26433067725

Status : Answered

Chosen Option : 4

Q.14 Which of the following numbers will replace the question mark (?) in the given series?  
3840, 384, ?, 8, 2, 1

Ans  1. 48

2. 28

3. 38

4. 58

Question ID : 26433076747

Status : Answered

Chosen Option : 1

Q.15 Seven people, E, F, G, H, I, J and K are sitting in a straight row, facing north. H is sitting fourth to the left of I. K is sitting third to the left of F. J is sitting third to the right of F. G is sitting fourth to the right of K. Who sits at the third position from the left end of the row?

Ans  1. F

2. G

3. H

4. E


Question ID : 26433068280

Status : Answered

Chosen Option : 4

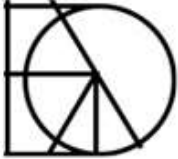
KD Job Updates

Q.16 Select the option figure which is embedded in the given figure. (Rotation is NOT allowed).

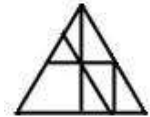


Ans

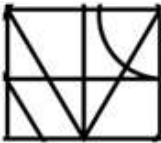
✗ 1.



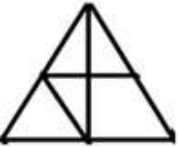
✓ 2.



✗ 3.



✗ 4.



Question ID : 26433076579

Status : Answered

Chosen Option : 2

Q.17 Select the option that is related to the third term in the same way as the second term is related to the first term.

GENERAL : 7514518112 :: RELATION : ?

Ans ✗ 1. 78905621

✗ 2. 17865432

✗ 3. 198765432

✓ 4. 1851212091514

Question ID : 26433067265

Status : Answered

Chosen Option : 4

Q.18 Select the option that is related to the third number in the same way as the second number is related to the first number and the sixth number is related to the fifth number.

4 : 96 :: 13 : ? :: 9 : 161

Ans  1. 247

2. 249

3. 169

4. 240

Question ID : 26433069190

Status : Not Attempted and  
Marked For Review

Chosen Option : --

Q.19 उस विकल्प का चयन करें जो तीसरे शब्द से उसी प्रकार संबंधित है, जिस प्रकार दूसरा शब्द पहले शब्द से संबंधित है।

(शब्दों को अर्थपूर्ण शब्दों के रूप में माना जाना चाहिए और शब्द में अक्षरों की संख्या/व्यंजनों की संख्या/स्वरों की संख्या के आधार पर उन्हें एक-दूसरे से संबंधित नहीं किया जाना चाहिए)

मुर्गी : चूजा :: तितली : ?

Ans  1. हिरण का बच्चा

2. इल्ली

3. बिल्ली का बच्चा

4. बछड़ा

Question ID : 26433082577

Status : Answered

Chosen Option : 2

Q.20 Which two signs should be interchanged to make the below equation mathematically correct?

$30 + 54 \div 18 - 48 \times 16 = 58$

Ans  1.  $\times$  and  $+$

2.  $+$  and  $+$

3.  $+$  and  $\times$

4.  $+$  and  $-$

Question ID : 264330117542

Status : Answered

Chosen Option : 1

Section : Part-B-General Knowledge and General awareness

Q.1 Which scheme was launched by Indian government for creation of self employment opportunities for unemployed educated youth?

Ans  1. National Rural Employment Guarantee Act

2. Annapurna scheme

3. Grameen Udyami Yojana

4. Pradhan Mantri Rozgar Yojana

Question ID : 264330116067

Status : Answered

Chosen Option : 4

Q.2 Who among the following was the founder of the Mauryan Empire?

Ans  1. Samudragupta

2. Chandragupta Maurya

3. Ashoka

4. Chandragupta II

Question ID : 26433090571

Status : Answered

Chosen Option : 2

Q.3  $\text{Fe} + \text{CuSO}_4 \rightarrow \text{FeSO}_4 + \text{Cu}$

This is an example of \_\_\_\_\_ reaction.

Ans  1. displacement

2. redox

3. neutralisation

4. reversible

Question ID : 264330115163

Status : Answered

Chosen Option : 1

Q.4 Garba folk dance belongs to which of the following states of India?

Ans  1. Madhya Pradesh

2. Maharashtra

3. Gujarat

4. Rajasthan

Question ID : 26433074072

Status : Answered

Chosen Option : 3

Q.5 Which state of India hosted the 2015 National Games of India?

Ans  1. Goa

2. Haryana

3. Kerala

4. Gujarat

Question ID : 264330115923

Status : Not Answered

Chosen Option : --

Q.6 In 2019-20, India had \_\_\_\_\_ km of broad gauge railway lines.

- Ans
- 1. 73400
  - 2. 65700
  - 3. 63950
  - 4. 61200

Question ID : 264330115392  
Status : Not Answered  
Chosen Option : --

Q.7 In India, Information Technology Act was passed in the year \_\_\_\_\_.

- Ans
- 1. 2000
  - 2. 2001
  - 3. 2008
  - 4. 2005

Question ID : 264330116213  
Status : Answered  
Chosen Option : 1

Q.8 ब्रिटिश औपनिवेशिक शासन के तहत भारत की अर्थव्यवस्था मूल रूप से कृषि प्रधान रही। उस समय देश की लगभग कितने प्रतिशत जनसंख्या कृषि से प्रत्यक्ष या अप्रत्यक्ष रूप से आजीविका प्राप्त करती थी?

- Ans
- 1. 65
  - 2. 85
  - 3. 60
  - 4. 70

Question ID : 264330116147  
Status : Answered  
Chosen Option : 3

Q.9 Which Indian Cricketer is known as "The Wall" ?

- Ans
- 1. Sachin Tendulkar
  - 2. Harbhajan Singh
  - 3. Mahendra Singh Dhoni
  - 4. Rahul Dravid

Question ID : 264330116281  
Status : Answered  
Chosen Option : 4

Q.10 निम्नलिखित उदाहरण में, प्राथमिक मांसाहारी कौन है?  
घास-टिड्डा-मेंढक-सांप-बाज़

- Ans
- 1. बाज़
  - 2. घास
  - 3. टिड्डा
  - 4. मेंढक

Question ID : 264330115195  
Status : Answered  
Chosen Option : 1

Q.11 Who among the following was elected as the President of Board of Control for Cricket in India(BCCI) in October 2022?

- Ans
- 1. Roger Binny
  - 2. Virat Kohli
  - 3. Sourav Ganguly
  - 4. Jay Shah

Question ID : 264330114928  
Status : Answered  
Chosen Option : 1

Q.12 India's first lavender festival was inaugurated in \_\_\_\_\_ in May 2022.

- Ans
- 1. Delhi
  - 2. Kerala
  - 3. Jammu and Kashmir
  - 4. Assam

Question ID : 264330115104  
Status : Answered  
Chosen Option : 2

Q.13 He wrote 'Vande Mataram' as a hymn to the motherland. Who is 'he' referred to?

- Ans
- 1. Bankim Chandra Chattopadhyay
  - 2. Aurobindo Ghosh
  - 3. Jawaharlal Nehru
  - 4. Ravindranath Tagore

Question ID : 264330115719  
Status : Answered  
Chosen Option : 1



Q.14 What should be the minimum age for being a member of Lok Sabha?

Ans  1. 25

2. 30

3. 32

4. 35

Question ID : 26433086845  
Status : Answered  
Chosen Option : 1

Q.15  $C_2H_5OH$  is the chemical formula of \_\_\_\_\_.

Ans  1. propene

2. methane

3. butyne

4. ethanol

Question ID : 26433091491  
Status : Answered  
Chosen Option : 4

Q.16 निम्नलिखित में से कौन सा एक कृषि आधारित उद्योग है?

Ans  1. लोहा तथा इस्पात

2. रेशम वस्त्र

3. सीमेंट

4. पेट्रोसायन

Question ID : 264330115576  
Status : Answered  
Chosen Option : 2

Q.17 Who, in August 2022, was appointed as the Secretary to the President of India?

Ans  1. IFS Vivek Kumar

2. IAS Rajesh Verma

3. Dr. Hiren Joshi

4. IFS Sanjeev Kumar Singla

Question ID : 264330115032  
Status : Not Answered  
Chosen Option : --

Q.18 कलामंडलम रमनकुट्टी नायर को किस नृत्य शैली में उनके योगदान के लिए पद्म भूषण से सम्मानित किया गया।

- Ans  1. कथकली  
 2. लावणी  
 3. कथक  
 4. मणिपुरी

Question ID : 264330115867  
Status : Answered  
Chosen Option : 1

Q.19 The \_\_\_\_\_ committee was set up to make recommendations about the fundamental duties.

- Ans  1. Balwant Ray Mehta  
 2. Swaminathan  
 3. Bibek Debroy  
 4. Swaran Singh

Question ID : 26433090665  
Status : Answered  
Chosen Option : 4

Q.20 All banks which are included in the \_\_\_\_\_ Schedule to the Reserve Bank of India Act, 1934 are Scheduled Banks.

- Ans  1. third  
 2. fifth  
 3. second  
 4. first

Question ID : 264330115329  
Status : Answered  
Chosen Option : 1

Section : Part-C-Elementary Mathematics

Q.1 One third of a journey is covered at the rate of 30 km/h, one fourth at the rate of 50 km/h and the rest at 60 km/h. Find the average speed for the whole journey. (Correct to 2 decimal places)

- Ans  1. 43.37 km/h  
 2. 45.37 km/h  
 3. 44.37 km/h  
 4. 42.37 km/h

Question ID : 26433080154  
Status : Not Answered  
Chosen Option : --

Q.2 If  $27 : 81 :: x : 63$ , then find the value of x.

- Ans
- 1. 27
  - 2. 36
  - 3. 42
  - 4. 21

Question ID : 26433079774  
Status : Answered  
Chosen Option : 4

Q.3 A solid metallic sphere of radius 21 cm is melted and moulded into small right circular cones, each of radius 7 cm and height of 3 cm. The number of such cones is:

- Ans
- 1. 186
  - 2. 126
  - 3. 252
  - 4. 224

Question ID : 26433075487  
Status : Answered  
Chosen Option : 3

Q.4 Which of the following ratios is the greatest?

$$\frac{3}{4}, \frac{1}{2}, \frac{7}{8} \text{ and } \frac{5}{6}$$

- Ans
- 1.  $\frac{5}{6}$
  - 2.  $\frac{3}{4}$
  - 3.  $\frac{1}{2}$
  - 4.  $\frac{7}{8}$

Question ID : 26433076007  
Status : Answered  
Chosen Option : 4

Q.5 The LCM of 30, 36 and 40 is divided by 10. The result is X's square. Find the value of X.

Ans  1. 4

2. 6

3. 5

4. 7

Question ID : 264330116645

Status : Answered

Chosen Option : 2

Q.6 A silver shop owner claims that he is selling silver at ₹65/g when cost price is ₹70/g, but he is giving 900 mg instead of 1 g. The percentage of profit or loss of the shop owner (correct to 2 decimal places) is:

Ans  1. Profit 3.17%

2. Loss 3.27%

3. Loss 3.12%

4. Profit 3.07%

Question ID : 26433079931

Status : Not Answered

Chosen Option : --

Q.7 If 6 men can complete a work in 4 days and 3 women can complete the same work in 7 days, then find the time taken to complete same work by 8 men and 3 women.

Ans  1.  $\frac{22}{15}$  days

2.  $\frac{24}{13}$  days

3.  $\frac{25}{12}$  days

4.  $\frac{21}{10}$  days

Question ID : 26433066322

Status : Not Answered

Chosen Option : --

Q.8 रवि और सुहास क्रमशः 2 km/h और 4 km/h की चाल से A से B तक चलते हैं जिनके बीच की दूरी 24 km है। सुहास B पर पहुँचता है, और तुरंत वापस लौटता है और C पर रवि से मिलता है। A से C के बीच की दूरी ज्ञात कीजिए।

Ans  1. 20 km

2. 12 km

3. 16 km

4. 15 km

Question ID : 26433065097

Status : Answered

Chosen Option : 2

Q.9 The population of a village increased from 90000 to 98000 in 1 year. Find the rate of growth of population. (Rounded off to one decimal place)

- Ans
- 1. 7.6%
  - 2. 8.9%
  - 3. 6.2%
  - 4. 9.2%

Question ID : 26433080043  
Status : Answered  
Chosen Option : 2

Q.10 Arun applied for a job of English teacher in a school. In the test for the job, he scored 9 in speaking, 8 in listening, 6 in writing, and 7 in interview. For calculating the final score, weights of 4, 3, 3 and 4 were assigned to speaking, listening, writing and interview respectively. What is the weighted average score of Arun? (Round off to two decimal places)

- Ans
- 1. 7.75
  - 2. 6.95
  - 3. 7.57
  - 4. 7.45

Question ID : 26433082496  
Status : Not Answered  
Chosen Option : --

Q.11 A shopkeeper offers the following three discount schemes. Which scheme(s) has/have the maximum discount percentage?

- I. Two successive discounts of 5% and 20%
- II. Buy 6, get 2 free
- III. Buy 6, get 4 free

- Ans
- 1. Only I and II
  - 2. Only I
  - 3. Only III
  - 4. Only II

Question ID : 26433082975  
Status : Answered  
Chosen Option : 3

Q.12 A certain sum becomes ₹26,980 in 3years and ₹40,280 in 8 years at simple interest. Find the rate of interest.

- Ans
- 1. 14%
  - 2. 12%
  - 3. 13%
  - 4. 11%

Question ID : 26433066244  
Status : Not Answered  
Chosen Option : --

Q.13 The difference between a discount of 30% and two successive discounts of 17% and 13% on Rs.5,000 is \_\_\_\_\_.

- Ans
- 1. Rs.110.50
  - 2. Rs.1,389.50
  - 3. Rs.850.00
  - 4. Rs.539.50

Question ID : 26433080317  
Status : Not Answered  
Chosen Option : --

Q.14 If the radius of the base and the slant height of a cone are 13 cm and 35 cm respectively, then what is the curved surface area of the cone?

- Ans
- 1.  $1484 \text{ cm}^2$
  - 2.  $1470 \text{ cm}^2$
  - 3.  $1440 \text{ cm}^2$
  - 4.  $1430 \text{ cm}^2$

Question ID : 26433075707  
Status : Answered  
Chosen Option : 4

Q.15 Sanju can do a piece of work in 17 days and Rohan can do the same work in 68 days. Find the time required to complete the same work if they are working on alternate days and Sanju starts the work on first day.

- Ans
- 1.  $105/4$  days
  - 2.  $41/4$  days
  - 3.  $107/4$  days
  - 4.  $109/4$  days

Question ID : 264330116897  
Status : Not Answered  
Chosen Option : --

Q.16 A child aged 8 years is weighs 20 kg. By the time the child is 15 years old, he weighs 42 kg. What is the percent increase in the weight?

- Ans
- 1. 100 percent
  - 2. 110 percent
  - 3. 120 percent
  - 4. 80 percent

Question ID : 264330116817  
Status : Answered  
Chosen Option : 2

Q.17 If  $30 + 180 \div 30 \times 6 - 15 - 16 - 60 \div n - 15 = 0$ , then the value of n is:

- Ans  1. 0  
 2. 3  
 3. 2  
 4. 1

Question ID : 26433075488  
Status : Answered  
Chosen Option : 2

Q.18 Two sprinters cover the same distance at the speed of 18 km/h and 20 km/h, respectively. Find the distance travelled when one takes 15 minutes longer than the other.

- Ans  1. 40 km  
 2. 45 km  
 3. 42 km  
 4. 46 km

Question ID : 26433075119  
Status : Not Answered  
Chosen Option : --

Q.19 Find the percentage concentration of wine in the wine–water solution having the ratio of 7 : 1 respectively.

- Ans  1. 76.3%  
 2. 52.9%  
 3. 87.5%  
 4. 49.4%

Question ID : 26433080012  
Status : Not Attempted and Marked For Review  
Chosen Option : --

Q.20 A seller professes to sell his grapes at cost price but still gains  $11\frac{1}{9}\%$  by using faulty weight . What weight does he use instead of 1 kg ?

- Ans  1. 900 g  
 2. 10 g  
 3. 850 g  
 4. 990 g

Question ID : 26433074925  
Status : Answered  
Chosen Option : 1

Q.1 Select the most appropriate ANTONYM of the given word.

Witty

- Ans  1. Fashionable  
 2. Stupid  
 3. Interesting  
 4. Smart

Question ID : 26433084895  
Status : Not Answered  
Chosen Option : --

Q.2 Select the most appropriate ANTONYM of the given word.

Honest

- Ans  1. Frank  
 2. Open  
 3. Corrupt  
 4. Foolish

Question ID : 26433072811  
Status : Not Answered  
Chosen Option : --

Q.3 Select the most appropriate option that can substitute the underlined segment in the given sentence.

The waiters were quick to replenish their stock of food.

- Ans  1. look for  
 2. fill up  
 3. take back  
 4. ask for

Question ID : 26433099876  
Status : Not Answered  
Chosen Option : --

Q.4 Identify the spelling error in the given sentence and select the option that rectifies the error.

It is necessary for candidates to carry their examination admit cards with them.

- Ans  1. examineition  
 2. admit  
 3. necessary  
 4. candidets

Question ID : 26433060321  
Status : Not Answered  
Chosen Option : --



Q.5 Select the most appropriate homonym to fill in the blank.

The annual extraction of this \_\_\_\_\_ costs around \$10,000,000.

- Ans
- 1. o'er
  - 2. arc
  - 3. ore
  - 4. or

Question ID : 26433088436  
Status : Not Answered  
Chosen Option : --

Q.6 Select the most appropriate meaning of the given idiom.

Bury the hatchet

- Ans
- 1. To end a quarrel
  - 2. To convince someone
  - 3. To be in fear
  - 4. To face a risk

Question ID : 26433073703  
Status : Not Answered  
Chosen Option : --

Q.7 Parts of the following sentence have been given as options. One of them may contain an error. Select the part that contains the error from the given options. If you don't find any error, mark 'No error' as your answer.

Rover had eaten the pie before we gets home.

- Ans
- 1. we gets home
  - 2. Rover had eaten
  - 3. No error
  - 4. the pie before

Question ID : 26433090487  
Status : Not Answered  
Chosen Option : --

Q.8 Select the most appropriate synonym for the underlined word in the given sentence.

Her debonair combined with quick wit added to her oratory skills.

- Ans
- 1. charming
  - 2. corpulent
  - 3. amorous
  - 4. churlish

Question ID : 26433073751  
Status : Not Answered  
Chosen Option : --

**Q.9** Select the most appropriate meaning of the given idiom.

**Chew someone out**

- Ans**
- 1. To tackle a difficulty
  - 2. To scold someone
  - 3. Make someone laugh
  - 4. To eat

Question ID : 26433073714  
Status : **Not Answered**  
Chosen Option : --

**Q.10** Select the most appropriate option to fill in the blank.  
The farmer \_\_\_\_\_ up and saw a tractor approaching him.

- Ans**
- 1. sit
  - 2. looked
  - 3. bent
  - 4. cleared

Question ID : 26433085598  
Status : **Not Answered**  
Chosen Option : --

**Q.11** Select the most appropriate synonym of the word given in the bracket to fill in the blank.

You have \_\_\_\_\_ (built up) a lot of muscles by going to the gym.

- Ans**
- 1. enhanced
  - 2. elevated
  - 3. boosted
  - 4. gained

Question ID : 26433084621  
Status : **Not Answered**  
Chosen Option : --

**Q.12** Identify and correct the **INCORRECTLY** spelt word in the given sentence.  
The monkees were snatching food from the passengers in the bus.

- Ans**
- 1. monkeys
  - 2. snatching
  - 3. bas
  - 4. pasengers

Question ID : 26433072761  
Status : **Not Answered**  
Chosen Option : --

Q.13 Select the most appropriate synonym of the underlined word from the given options.

My grandmother, a pious lady, died peacefully in her village.

- Ans  1. Devout  
 2. Envious  
 3. Attractive  
 4. Gallant

Question ID : 26433086515  
Status : Not Answered  
Chosen Option : --

Q.14 Select the most appropriate option that can substitute the underlined segment in the given sentence. If there is no need to substitute it, select 'No substitution required'.

Men never have managed to abolish wars up to now but maybe they will find a way in future.

- Ans  1. have never managed  
 2. never has managed  
 3. will have never managed  
 4. No substitution required

Question ID : 26433089091  
Status : Not Answered  
Chosen Option : --

Q.15 Select the correct word for the blanks in the given sentence.

Venga boys is a famous musical \_\_\_\_\_ of the country and Madhu gave me a \_\_\_\_\_ on my birthday.

- Ans  1. group  
 2. band  
 3. troop  
 4. ring

Question ID : 26433060533  
Status : Not Answered  
Chosen Option : --

**Comprehension:**

In the following passage, some words have been deleted. Read the passage carefully and select the most appropriate option to fill in each blank.

The feeling of affection comes only if trust and respect are (1)\_\_\_\_\_. Without trust and respect, you feel that the other is (2)\_\_\_\_\_ to make you unhappy and/or does not wish well for you and hence you can never feel attraction for him/her. You always see each other as being in (3)\_\_\_\_\_. And that is why today in the family, you find that people have been living together for years and years and still don't feel (4)\_\_\_\_\_ to each other, because that basic trust and respect are missing. Affection comes when we (5)\_\_\_\_\_ that two or more persons want to make each other happy. Then for the first time, we feel that we are related to the other person. This feeling is called affection.

**SubQuestion No : 16**

**Q.16 Select the most appropriate option to fill in blank number 1.**

- Ans
- 1. verified
  - 2. constrained
  - 3. ensured
  - 4. confirmed

Question ID : 26433088527  
Status : Not Answered  
Chosen Option : --

**Comprehension:**

In the following passage, some words have been deleted. Read the passage carefully and select the most appropriate option to fill in each blank.

The feeling of affection comes only if trust and respect are (1)\_\_\_\_\_. Without trust and respect, you feel that the other is (2)\_\_\_\_\_ to make you unhappy and/or does not wish well for you and hence you can never feel attraction for him/her. You always see each other as being in (3)\_\_\_\_\_. And that is why today in the family, you find that people have been living together for years and years and still don't feel (4)\_\_\_\_\_ to each other, because that basic trust and respect are missing. Affection comes when we (5)\_\_\_\_\_ that two or more persons want to make each other happy. Then for the first time, we feel that we are related to the other person. This feeling is called affection.

**SubQuestion No : 17**

**Q.17 Select the most appropriate option to fill in blank number 2.**

- Ans
- 1. pressured
  - 2. trying
  - 3. hesitated
  - 4. shying

Question ID : 26433088528  
Status : Not Answered  
Chosen Option : --

**Comprehension:**

In the following passage, some words have been deleted. Read the passage carefully and select the most appropriate option to fill in each blank.

The feeling of affection comes only if trust and respect are (1)\_\_\_\_\_. Without trust and respect, you feel that the other is (2)\_\_\_\_\_ to make you unhappy and/or does not wish well for you and hence you can never feel attraction for him/her. You always see each other as being in (3)\_\_\_\_\_. And that is why today in the family, you find that people have been living together for years and years and still don't feel (4)\_\_\_\_\_ to each other, because that basic trust and respect are missing. Affection comes when we (5)\_\_\_\_\_ that two or more persons want to make each other happy. Then for the first time, we feel that we are related to the other person. This feeling is called affection.

**SubQuestion No : 18**

**Q.18 Select the most appropriate option to fill in blank number 3.**

- Ans  1. opposition  
 2. business  
 3. affection  
 4. friendship

Question ID : 26433088529  
Status : Not Answered  
Chosen Option : --

**Comprehension:**

In the following passage, some words have been deleted. Read the passage carefully and select the most appropriate option to fill in each blank.

The feeling of affection comes only if trust and respect are (1)\_\_\_\_\_. Without trust and respect, you feel that the other is (2)\_\_\_\_\_ to make you unhappy and/or does not wish well for you and hence you can never feel attraction for him/her. You always see each other as being in (3)\_\_\_\_\_. And that is why today in the family, you find that people have been living together for years and years and still don't feel (4)\_\_\_\_\_ to each other, because that basic trust and respect are missing. Affection comes when we (5)\_\_\_\_\_ that two or more persons want to make each other happy. Then for the first time, we feel that we are related to the other person. This feeling is called affection.

**SubQuestion No : 19**

**Q.19 Select the most appropriate option to fill in blank number 4.**

- Ans  1. effected  
 2. separated  
 3. related  
 4. affected

Question ID : 26433088530  
Status : Not Answered  
Chosen Option : --

**Comprehension:**

In the following passage, some words have been deleted. Read the passage carefully and select the most appropriate option to fill in each blank.

The feeling of affection comes only if trust and respect are (1)\_\_\_\_\_. Without trust and respect, you feel that the other is (2)\_\_\_\_\_ to make you unhappy and/or does not wish well for you and hence you can never feel attraction for him/her. You always see each other as being in (3)\_\_\_\_\_. And that is why today in the family, you find that people have been living together for years and years and still don't feel (4)\_\_\_\_\_ to each other, because that basic trust and respect are missing. Affection comes when we (5)\_\_\_\_\_ that two or more persons want to make each other happy. Then for the first time, we feel that we are related to the other person. This feeling is called affection.

**SubQuestion No : 20**

**Q.20** Select the most appropriate option to fill in blank number 5.

- Ans
- 1. grant
  - 2. permit
  - 3. confess
  - 4. recognise

Question ID : 26433088531  
Status : Not Answered  
Chosen Option : --

Section : Part-D-Hindi

**Q.1** 'सारंग' निम्नलिखित में से किसका पर्यायवाची शब्द है?

- Ans
- 1. हिरण
  - 2. गथा
  - 3. सितार
  - 4. हंस

Question ID : 26433091171  
Status : Answered  
Chosen Option : 1

**Q.2** निम्नलिखित वाक्य के किस शब्द में अशुद्धि है?  
आगरा के निकट दो रेलगाड़ीयों की टक्कर हो गई।

- Ans
- 1. टक्कर
  - 2. आगरा
  - 3. रेलगाड़ीयों
  - 4. निकट

Question ID : 26433066766  
Status : Answered  
Chosen Option : 3

Q.3 'प्रतिभा' शब्द के समानार्थी शब्द से निम्न वाक्य में रिक्त स्थान की पूर्ति कीजिए।  
विजय में \_\_\_\_\_ शक्ति प्रबल है।

- Ans
- 1. पाचन
  - 2. मेधा
  - 3. शारीरिक
  - 4. धारण

Question ID : 26433079240  
Status : Answered  
Chosen Option : 2

Q.4 निम्न वाक्य में रेखांकित शब्द का विलोम शब्द क्या होगा?  
भारत विश्व का सबसे बड़ा 'लोकतंत्र' है।

- Ans
- 1. राजतंत्र
  - 2. भ्रष्टतंत्र
  - 3. जनता द्वारा शासन
  - 4. जनता का शासन

Question ID : 26433085074  
Status : Answered  
Chosen Option : 1

Q.5 निम्नलिखित वाक्यांश के लिए उपयुक्त सार्थक शब्द क्या होगा?  
जिसने इंद्र पर विजय प्राप्त की हो

- Ans
- 1. इंद्र जीता
  - 2. इंद्रजीत
  - 3. इन्द्रजय
  - 4. इंद्र विजय

Question ID : 26433073311  
Status : Answered  
Chosen Option : 2

Q.6 निम्नलिखित में से कौन सा एक विशेषण शब्द नहीं है?

- Ans
- 1. दोगुना
  - 2. काला
  - 3. पुराना
  - 4. आप

Question ID : 26433085050  
Status : Answered  
Chosen Option : 4

Q.7 निम्नलिखित वाक्य में रेखांकित शब्द का पर्यायवाची शब्द क्या होगा?  
'विनीत' होना सभी के बस की बात नहीं है।

- Ans
- 1. संजीविनी
  - 2. विनती
  - 3. सुशील
  - 4. लड़का

Question ID : 26433091338  
Status : Answered  
Chosen Option : 3

Q.8 निम्नलिखित मुहावरे का सही अर्थ क्या है?  
छक्के छुड़ाना

- Ans
- 1. हरा देना
  - 2. भुला देना
  - 3. भला बुरा करना
  - 4. साफ कर देना

Question ID : 26433065768  
Status : Answered  
Chosen Option : 1

Q.9 निम्नलिखित मुहावरे के सही अर्थ का चयन विकल्पों में से कीजिए।  
अगस्त्य का समुद्र पान

- Ans
- 1. दिमाग काम न करना
  - 2. असंभव कार्य करना
  - 3. समझ में कुछ न आना
  - 4. रहस्य छुपा रखना

Question ID : 26433070008  
Status : Answered  
Chosen Option : 1

Q.10 निम्न विकल्पों में से शुद्ध वाक्य का चयन कीजिए।

- Ans
- 1. मेरे पिताजी से रोटी नहीं खाई जाती।
  - 2. राम ने पढ़ता होगा।
  - 3. सुरेश ने गीते गा रहा था।
  - 4. लड़की पुस्तक पढ़ी है।

Question ID : 26433063077  
Status : Answered  
Chosen Option : 4



Q.11 'जिसके बालों में चंद्रमा है' वाक्यांश के लिए एक शब्द है-

- Ans
- 1. चक्रपाणि
  - 2. चंद्रशेखर
  - 3. चंद्रचूड़
  - 4. चंद्रग्रहण

Question ID : 26433069942  
Status : Answered  
Chosen Option : 4

Q.12 वह पौधों को खींचती है।

उपरोक्त वाक्य में रेखांकित शब्द के स्थान पर उचित शब्द क्या होगा?

- Ans
- 1. भीजती
  - 2. सींचती
  - 3. रचती
  - 4. सुखाती

Question ID : 26433062785  
Status : Answered  
Chosen Option : 2

Q.13 किस विकल्प में पौनःपुन्यबोधक क्रियाविशेषण के उदाहरण गलत हैं?

- Ans
- 1. निकट, उस तरफ, परसों
  - 2. बार – बार, बहुधा, अक्सर
  - 3. पुनः, फिर, हरबार
  - 4. प्रतिदिन, घड़ी – घड़ी, बार – बार

Question ID : 26433063052  
Status : Answered  
Chosen Option : 1

Q.14 निम्नलिखित विकल्पों में से 'जो बात पहले कभी न हुई हो' वाक्यांश के लिए एक सार्थक शब्द कौन सा है?

- Ans
- 1. भूतपूर्व
  - 2. निष्क्रिय
  - 3. सक्रिय
  - 4. अभूतपूर्व

Question ID : 26433062540  
Status : Answered  
Chosen Option : 4

Q.15 निम्नलिखित वाक्य में रेखांकित खंड के स्थान पर प्रयुक्त होने वाले सबसे उपयुक्त विकल्प का चयन कीजिए।  
मैंने कल दिल्ली जा रहा हूँ।

- Ans  1. मैं  
 2. मुझे  
 3. हम  
 4. मेरे

Question ID : 26433079666  
Status : Answered  
Chosen Option : 1

**Comprehension:**

निम्नलिखित गद्यांश में कुछ शब्दों को हटा दिया गया है। दिए गए विकल्पों की सहायता से रिक्त स्थानों की पूर्ति कीजिए। प्रत्येक संख्या के लिए सबसे उपयुक्त विकल्प का चयन कीजिए।  
मनुष्य के जन्म के साथ विभिन्न समस्याएँ भी 1. \_\_\_\_\_ होती है। प्रारंभ में समस्याएँ 2. \_\_\_\_\_ होती हैं बाद में वे सामाजिक समस्या के रूप में विकसित हो जाती हैं। मानव कभी भी अपने आप में 3. \_\_\_\_\_ नहीं होता। किसी न किसी प्रकार का 4. \_\_\_\_\_ प्रत्येक के जीवन में होता है। कुछ ऐसी 5. \_\_\_\_\_ होती हैं जो पूर्ण न होने पर समस्या बन जाती हैं।

**SubQuestion No : 16**

Q.16 रिक्त स्थान 1 की पूर्ति के लिए सबसे उपयुक्त विकल्प का चयन कीजिए।

- Ans  1. सिमट  
 2. उत्पन्न  
 3. अप्रत्यक्ष  
 4. अंत

Question ID : 264330111065  
Status : Answered  
Chosen Option : 2

**Comprehension:**

निम्नलिखित गद्यांश में कुछ शब्दों को हटा दिया गया है। दिए गए विकल्पों की सहायता से रिक्त स्थानों की पूर्ति कीजिए। प्रत्येक संख्या के लिए सबसे उपयुक्त विकल्प का चयन कीजिए।  
मनुष्य के जन्म के साथ विभिन्न समस्याएँ भी 1. \_\_\_\_\_ होती है। प्रारंभ में समस्याएँ 2. \_\_\_\_\_ होती हैं बाद में वे सामाजिक समस्या के रूप में विकसित हो जाती हैं। मानव कभी भी अपने आप में 3. \_\_\_\_\_ नहीं होता। किसी न किसी प्रकार का 4. \_\_\_\_\_ प्रत्येक के जीवन में होता है। कुछ ऐसी 5. \_\_\_\_\_ होती हैं जो पूर्ण न होने पर समस्या बन जाती हैं।

**SubQuestion No : 17**

Q.17 रिक्त स्थान 2 की पूर्ति के लिए सबसे उपयुक्त विकल्प का चयन कीजिए।

- Ans  1. एक  
 2. सबकी  
 3. अनगिनत  
 4. व्यक्तिगत

Question ID : 264330111066  
Status : Answered  
Chosen Option : 2

**Comprehension:**

निम्नलिखित गद्यांश में कुछ शब्दों को हटा दिया गया है। दिए गए विकल्पों की सहायता से रिक्त स्थानों की पूर्ति कीजिए। प्रत्येक संख्या के लिए सबसे उपयुक्त विकल्प का चयन कीजिए।  
मनुष्य के जन्म के साथ विभिन्न समस्याएँ भी 1. \_\_\_\_\_ होती है। प्रारंभ में समस्याएँ 2. \_\_\_\_\_ होती हैं बाद में वे सामाजिक समस्या के रूप में विकसित हो जाती हैं। मानव कभी भी अपने आप में 3. \_\_\_\_\_ नहीं होता। किसी न किसी प्रकार का 4. \_\_\_\_\_ प्रत्येक के जीवन में होता है। कुछ ऐसी 5. \_\_\_\_\_ होती हैं जो पूर्ण न होने पर समस्या बन जाती हैं।

**SubQuestion No : 18**

Q.18 रिक्त स्थान 3 की पूर्ति के लिए सबसे उपयुक्त विकल्प का चयन कीजिए।

- Ans
- 1. इतना
  - 2. अधूरा
  - 3. बढ़ता
  - 4. पूर्ण

Question ID : 264330111067

Status : Answered

Chosen Option : 4

**Comprehension:**

निम्नलिखित गद्यांश में कुछ शब्दों को हटा दिया गया है। दिए गए विकल्पों की सहायता से रिक्त स्थानों की पूर्ति कीजिए। प्रत्येक संख्या के लिए सबसे उपयुक्त विकल्प का चयन कीजिए।  
मनुष्य के जन्म के साथ विभिन्न समस्याएँ भी 1. \_\_\_\_\_ होती है। प्रारंभ में समस्याएँ 2. \_\_\_\_\_ होती हैं बाद में वे सामाजिक समस्या के रूप में विकसित हो जाती हैं। मानव कभी भी अपने आप में 3. \_\_\_\_\_ नहीं होता। किसी न किसी प्रकार का 4. \_\_\_\_\_ प्रत्येक के जीवन में होता है। कुछ ऐसी 5. \_\_\_\_\_ होती हैं जो पूर्ण न होने पर समस्या बन जाती हैं।

**SubQuestion No : 19**

Q.19 रिक्त स्थान 4 की पूर्ति के लिए सबसे उपयुक्त विकल्प का चयन कीजिए।

- Ans
- 1. समय
  - 2. अभाव
  - 3. परिणाम
  - 4. प्रयास

Question ID : 264330111068

Status : Answered

Chosen Option : 2

**Comprehension:**

निम्नलिखित गद्यांश में कुछ शब्दों को हटा दिया गया है। दिए गए विकल्पों की सहायता से रिक्त स्थानों की पूर्ति कीजिए। प्रत्येक संख्या के लिए सबसे उपयुक्त विकल्प का चयन कीजिए।  
मनुष्य के जन्म के साथ विभिन्न समस्याएँ भी 1. \_\_\_\_\_ होती है। प्रारंभ में समस्याएँ 2. \_\_\_\_\_ होती हैं बाद में वे सामाजिक समस्या के रूप में विकसित हो जाती हैं। मानव कभी भी अपने आप में 3. \_\_\_\_\_ नहीं होता। किसी न किसी प्रकार का 4. \_\_\_\_\_ प्रत्येक के जीवन में होता है। कुछ ऐसी 5. \_\_\_\_\_ होती हैं जो पूर्ण न होने पर समस्या बन जाती हैं।

**SubQuestion No : 20**

Q.20 रिक्त स्थान 5 की पूर्ति के लिए सबसे उपयुक्त विकल्प का चयन कीजिए।

- Ans  1. इच्छाएँ  
 2. सुरक्षा  
 3. भिन्नता  
 4. निर्धनता

Question ID : 264330111069

Status : Answered

Chosen Option : 3

KD Job Updates

## Constable GD in CAPFs SSF Rifleman GD in Assam Rifles and Sepoy in NCB Examination 2022

Roll Number	@Qmaths Telegram Channel
Candidate Name	@Qmaths Telegram Channel
Venue Name	iON Digital Zone iDZ Sivathapuram
Exam Date	27/01/2023
Exam Time	2:30 PM - 3:30 PM
Subject	Constable GD Examination 2022

### Section : Part-A-General Intelligence and Reasoning

Q.1 In a certain code language, 'OXFORD' is written as 'OODFRX' and 'KILLING' is written as 'lIGKLLN'. How will 'SOLUTION' be written as in that language?

- Ans
- 1. UOOITSNL
  - 2. LNSTIOOU
  - 3. IOOUSTLN
  - 4. IOOULNST

Question ID : 26433069650  
Status : Answered  
Chosen Option : 4

Q.2 Select the option that is related to the fifth number in the same way as the second number is related to the first number and the fourth number is related to the third number.

9 : 27 :: 12 : 48 :: 6 : ?

- Ans
- 1. 18
  - 2. 20
  - 3. 12
  - 4. 22

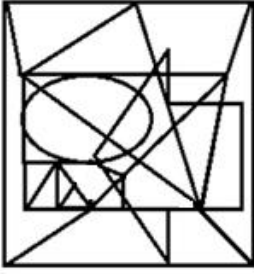
Question ID : 26433069432  
Status : Answered  
Chosen Option : 1

Q.3 Select the option figure in which the given figure is embedded (rotation is NOT allowed).

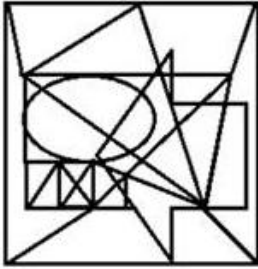


Ans

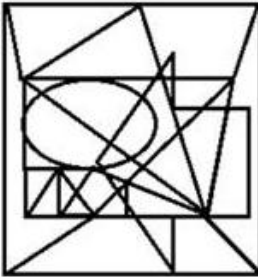
✗ 1.



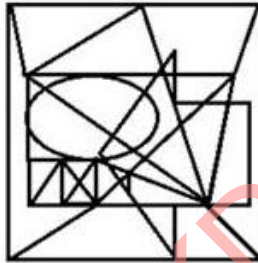
✗ 2.



✗ 3.



✓ 4.



KD Job Updates

Question ID : 26433069594  
Status : Not Answered  
Chosen Option : --

Q.4 Select the number from among the given options that can replace the question mark (?) in the following series.

$$\frac{1}{402}, \frac{1}{335}, ?, \frac{1}{201}, \frac{1}{134}$$

Ans

1.  $\frac{1}{289}$

2.  $\frac{1}{268}$

3.  $\frac{1}{259}$

4.  $\frac{1}{282}$

Question ID : 26433074532  
Status : Answered  
Chosen Option : 2

Q.5 Which option represents the correct order of the given words as they would appear in the English dictionary?

- 1 Marching
- 2 Marble
- 3 Matching
- 4 Maker
- 5 Major

Ans  1. 5,2,3,1,4

2. 5,4,3,2,1

3. 5,3,2,1,4

4. 5,4,2,1,3

Question ID : 26433069313  
Status : Answered  
Chosen Option : 4

Q.6 If '-' means 'division', '+' means 'multiplication', 'x' means 'addition' and '÷' means 'subtraction', which of the following equations is correct?

Ans  1.  $10 - 2 + 3 \div 9 \times 2 = 8$

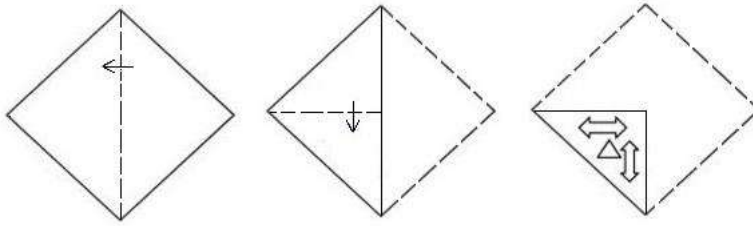
2.  $10 + 3 - 2 \times 9 \div 2 = 21$

3.  $20 + 6 - 4 \times 9 \div 6 = 32$

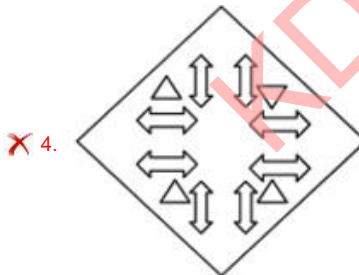
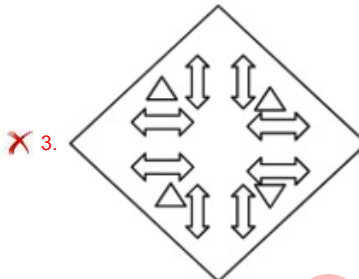
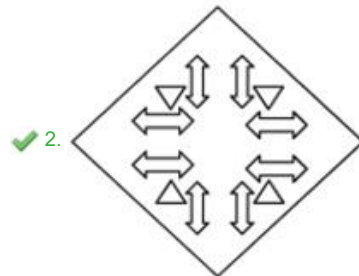
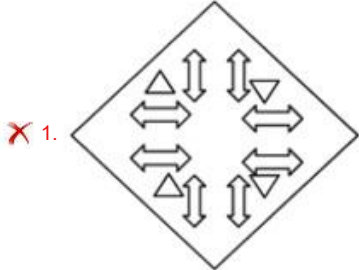
4.  $20 \div 9 \times 9 - 4 + 6 = 33$

Question ID : 26433085659  
Status : Not Answered  
Chosen Option : --

Q.7 A paper is folded and cut as shown below. How will it appear when unfolded?



Ans



Question ID : 26433082054  
Status : Answered  
Chosen Option : 2



Q.8 Which letter cluster will replace the question mark (?) to complete the given series?  
AEHJ , DHKM , ? , JNQS , MQTV

- Ans
- 1. GKNP
  - 2. GJLM
  - 3. GIKM
  - 4. FJMO

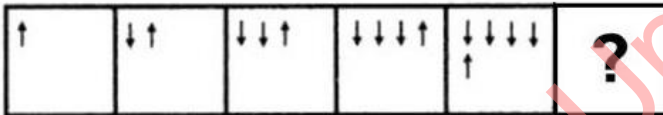
Question ID : 26433068439  
Status : Answered  
Chosen Option : 1

Q.9 In a code language, 'dark colors' is coded as 'yu nu', 'days are bright' is coded as 'wu tu ku', 'nights are dark' is coded as 'ku nu pu', 'paint bright' is coded as 'wu ru'. What is the code for the word 'colors'?

- Ans
- 1. nu
  - 2. ku
  - 3. tu
  - 4. yu

Question ID : 26433082272  
Status : Answered  
Chosen Option : 4

Q.10 Select the figure from among the given options that can replace the question mark (?) in the following series.



Ans

- 1.
- 2.
- 3.
- 4.

Question ID : 26433080490  
Status : Answered  
Chosen Option : 4

**Q.11** Select the option that is related to the third word in the same way as the second word is related to the first word.

(The words must be considered as meaningful English words and must not be related to each other based on the number of letters/number of consonants/vowels in the word)

Annual : Semi-annual:: Monthly : ?

- Ans
- 1. Fortnightly
  - 2. Yearly
  - 3. Daily
  - 4. Weekly

Question ID : 26433067972  
Status : Answered  
Chosen Option : 1

**Q.12** Which of the following letter-clusters will replace the question mark (?) in the given series?

AETO, CGRM, ?, GKNI, IMLG

- Ans
- 1. EHPJ
  - 2. EIPK
  - 3. DIQK
  - 4. EJQK

Question ID : 26433076438  
Status : Answered  
Chosen Option : 2

**Q.13** L is the husband of O. Q is the mother-in-law of O. P is the sister of L. P is married to R. R has one son T. How is Q related to T?

- Ans
- 1. Sister
  - 2. Mother
  - 3. Mother's mother
  - 4. Father's mother

Question ID : 26433074599  
Status : Answered  
Chosen Option : 3

**Q.14** Select the option that is related to the fifth letter-cluster in the same way as the second letter-cluster is related to the first letter-cluster and the fourth letter-cluster is related to the third letter-cluster.

AFHO : CHIP :: QDXM : SFYN :: ADGH : ?

- Ans
- 1. CFHI
  - 2. CFJR
  - 3. CHIF
  - 4. BGIP

Question ID : 26433080461  
Status : Answered  
Chosen Option : 1

**Q.15** Which two signs should be interchanged to make the below equation mathematically correct?

$$104 \div 13 + 78 - 3 \times 2 = 143$$

- Ans**
- 1.  $\div$  and  $-$
  - 2.  $\times$  and  $-$
  - 3.  $\div$  and  $\times$
  - 4.  $+$  and  $\times$

Question ID : 264330117534  
Status : Not Answered  
Chosen Option : --

**Q.16** Three statements are given, followed by three conclusions numbered I, II and III. Assuming the statements to be true, even if they seem to be at variance with commonly known facts, decide which of the conclusions logically follow(s) from the statements.

**Statements:**

All flowers are leaves.

All leaves are stems.

Some stems are roots.

**Conclusions:**

I. Some stems are leaves.

II. Some flowers are roots.

III. Some leaves are flowers.

- Ans**
- 1. Only conclusion II follows
  - 2. Only conclusions II and III follow
  - 3. Only conclusions I and III follow
  - 4. All conclusions follow

Question ID : 26433090992  
Status : Answered  
Chosen Option : 4

**Q.17** Select the number from among the given options that can replace the question mark (?) in the following series.

53, 56, 50, ?, 47, 62

- Ans**
- 1. 48
  - 2. 59
  - 3. 55
  - 4. 44

Question ID : 26433079155  
Status : Answered  
Chosen Option : 4

**Q.18** Select the correct mirror image of the given figure when the mirror is placed at MN as shown below.



- Ans**
- 1. y202M0e7L
  - 2. y262M0e7L
  - 3. y202MC97L
  - 4. y202M0e7L

Question ID : 26433089456  
Status : Not Answered  
Chosen Option : --

**Q.19** Seven people are sitting in a movie theatre watching a movie facing North. D is sitting towards right of A but towards left of G. Y is sitting towards right of C and towards left of A. Z is sitting towards left of F and is second from the right end. Who is sitting second from the left end?

- Ans**
- 1. C
  - 2. Z
  - 3. A
  - 4. Y

Question ID : 26433079058  
Status : Answered  
Chosen Option : 4

**Q.20** There are 8 people sitting in a circle facing the centre: A, B, C, D, E, F, G and H. A is sitting to the immediate right of G and immediate left of E. Second to the right of E is C. D is sitting to the immediate left of C. F is sitting to the immediate left of G. H is the immediate neighbour of F and B. Who is sitting to the immediate right of B?

- Ans**
- 1. D
  - 2. A
  - 3. C
  - 4. H

Question ID : 26433091614  
Status : Answered  
Chosen Option : 4

Section : Part-B-General Knowledge and General awareness

**Q.1** What type of unemployment will be generated by the agricultural sector in case when it employs additional labourers only for some time of the year like the harvest season?

- Ans**
- 1. Disguised unemployment
  - 2. Cyclic unemployment
  - 3. Seasonal unemployment
  - 4. Structural unemployment

Question ID : 264330116087  
Status : Answered  
Chosen Option : 2

Q.2 A \_\_\_\_\_ is a deposit account opted for by many who wish to save a certain part of their earnings.

- Ans
- 1. share
  - 2. savings account
  - 3. loan
  - 4. debenture

Question ID : 264330115321  
Status : Answered  
Chosen Option : 2

Q.3 Export of goods enhances \_\_\_\_\_.

- Ans
- 1. expenses
  - 2. local debt
  - 3. nation's loan
  - 4. foreign exchange

Question ID : 264330115408  
Status : Answered  
Chosen Option : 4

Q.4 Who became the Member of Legislative Assembly from Dhamnagar constituency in Odisha, India in November 2022?

- Ans
- 1. Naveen Patnaik
  - 2. Bishnu Sethi
  - 3. Suryabanshi Suraj
  - 4. Chandrakant Jadhav

Question ID : 264330114944  
Status : Not Answered  
Chosen Option : --

Q.5 India's first-ever SAI Centre of Excellence for mountain terrain biking and bicycle motocross is to be set up in \_\_\_\_\_.

- Ans
- 1. Shimla
  - 2. Srinagar
  - 3. Nainital
  - 4. Ladakh

Question ID : 26433089931  
Status : Not Answered  
Chosen Option : --

Q.6 Sangeet Natak Akademi Awards (Akademi Puraskar) carries \_\_\_\_\_.

- Ans
- 1. Rs 1,00,000/- (Rupees one lakh) along with a Tamrapatra and Angavastram
  - 2. Rs 50,000/- along with a Tamrapatra and Angavastram
  - 3. Rs 50,000/- (Rupees Fifty thousand)
  - 4. Rs 3,00,000/- (Rupees three lakh)

Question ID : 264330115889  
Status : Not Answered  
Chosen Option : --

Q.7 The State Government under Consumer Protection Act 2019, by notification, shall establish a \_\_\_\_\_, in each district of the State.

- Ans
- 1. Street Consumer Disputes Redressal Commission
  - 2. National Consumer Disputes Redressal Commission
  - 3. District Consumer Disputes Redressal Commission
  - 4. Local Consumer Disputes Redressal Commission

Question ID : 264330116235  
Status : Not Answered  
Chosen Option : --

Q.8 The \_\_\_\_\_ was set up in 1963 with responsibilities in the field of seed production, particularly the foundation stock of HYV seeds.

- Ans
- 1. New Cooperative Development
  - 2. National Seeds Corporation
  - 3. National Farm Corporation
  - 4. Agricultural seeds corporation

Question ID : 26433054798  
Status : Not Answered  
Chosen Option : --

Q.9 Which of the following former Chief Economic Advisors has been appointed as the full time member of National Institution for Transforming India (NITI) Aayog in November 2022?

- Ans
- 1. Sreedharan Krishnakumari Satheesh
  - 2. Vijay Kumar Saraswat
  - 3. Rajesh Sharma
  - 4. Arvind Virmani

Question ID : 264330115024  
Status : Not Answered  
Chosen Option : --

Q.10 Why did Mohammed Ali Jinnah, Madan Mohan Malaviya and Mazhar UI Haq resign from the Imperial Legislative Council?

- Ans
- 1. to protest against the Rowlatt Act
  - 2. to support the Simon commission
  - 3. to support the Rowlatt Act
  - 4. to protest against the Simon commission

Question ID : 264330115702  
Status : Answered  
Chosen Option : 4

Q.11 Foods with starch in them will turn blue- black when they come in contact with \_\_\_\_\_.

- Ans
- 1. iodine
  - 2. blue litmus
  - 3. salt
  - 4. red litmus

Question ID : 264330115201  
Status : Answered  
Chosen Option : 4

Q.12 Kati Bihu, one of the three Bihu festivals of Assam, is celebrated in the month of \_\_\_\_\_.

- Ans
- 1. April
  - 2. October
  - 3. January
  - 4. December

Question ID : 264330115120  
Status : Answered  
Chosen Option : 1

Q.13 The members of a Vidhan Parishad are elected for a term of \_\_\_\_\_ years.

- Ans
- 1. 6
  - 2. 4
  - 3. 5
  - 4. 7

Question ID : 26433086676  
Status : Not Answered  
Chosen Option : --

Q.14 What are the volcanoes which have not erupted for a very long time but might erupt in future called?

- Ans
- 1. Extinct volcanoes
  - 2. Active volcanoes
  - 3. Dormant volcanoes
  - 4. Shield volcanoes

Question ID : 264330116004  
Status : Answered  
Chosen Option : 4

Q.15 Which of the following was the capital of Vajji Mahajanapada?

- Ans
- 1. Gaya
  - 2. Vaishali
  - 3. Anga
  - 4. Pataliputra

Question ID : 264330115462  
Status : Answered  
Chosen Option : 2

Q.16 The 42<sup>nd</sup> Constitutional Amendment was made according to the recommendation of \_\_\_\_\_, set up in 1976.

- Ans
- 1. Abhijeet Sen Committee
  - 2. Ajit Kumar Committee
  - 3. Abid Hussain Committee
  - 4. Swaran Singh Committee

Question ID : 26433089909  
Status : Not Answered  
Chosen Option : --

Q.17 In a football match, the length of a pitch must be between \_\_\_\_\_ and 120m.

- Ans
- 1. 105 m
  - 2. 110 m
  - 3. 100 m
  - 4. 90 m

Question ID : 26433071570  
Status : Answered  
Chosen Option : 4

Q.18 The Ghodmodini dance is a folk dance form associated with \_\_\_\_\_.

- Ans
- 1. Bihar
  - 2. Haryana
  - 3. Goa
  - 4. Gujarat

Question ID : 26433071687  
Status : Answered  
Chosen Option : 4

Q.19 Sri Lanka is separated from India by the \_\_\_\_\_.

- Ans
- 1. Isthmus of Kra
  - 2. Strait of Gibraltar
  - 3. Palk strait
  - 4. Isthmus of Panama

Question ID : 264330115568  
Status : Answered  
Chosen Option : 3

Q.20 Which two gases are released when lead nitrate is heated?

- Ans
- 1. Oxygen and nitrogen oxide
  - 2. Nitrogen dioxide and oxygen
  - 3. Carbon monoxide and oxygen
  - 4. Hydrogen and nitrogen dioxide

Question ID : 26433087849  
Status : Answered  
Chosen Option : 4

Section : Part-C-Elementary Mathematics

Q.1 Rajneesh deposited Rs.3,00,000 in a bank for three years. What will be the final amount if the rate of interest is 8% compounded annually?

- Ans
- 1. Rs.3,77,913.60
  - 2. Rs.3,70,000.00
  - 3. Rs.3,57,931.60
  - 4. Rs.3,50,000.00

Question ID : 26433080334  
Status : Answered  
Chosen Option : 1



**Q.2** Two trains running in opposite directions cross a man standing on the platform in 30 sec and 15 sec respectively and they cross each other in 25 sec. The ratio of their speeds is:

- Ans
- 1. 2 : 1
  - 2. 3 : 7
  - 3. 5 : 3
  - 4. 3 : 2

Question ID : 26433080048  
Status : Answered  
Chosen Option : 2

**Q.3**

Find the value of  $\frac{\frac{1}{6} \div \frac{1}{6} \times \frac{1}{6}}{\frac{1}{6} \div \frac{1}{6} \text{ of } \frac{1}{6}} - \frac{1}{36}$ .

- Ans
- 1.  $\frac{1}{6}$
  - 2. 0
  - 3.  $\frac{1}{36}$
  - 4. 1

Question ID : 26433074975  
Status : Answered  
Chosen Option : 4

**Q.4** A melon in the shape of a sphere having the radius of 9 cm is cut into two equal hemispheres. Find the volume (in  $\text{cm}^3$ , rounded off to 2 decimal places) of each half. Take  $\pi = \frac{22}{7}$

- Ans
- 1. 1,527.43  $\text{cm}^3$
  - 2. 1,547.34  $\text{cm}^3$
  - 3. 1,472.53  $\text{cm}^3$
  - 4. 1,372.35  $\text{cm}^3$

Question ID : 26433076249  
Status : Not Answered  
Chosen Option : --

**Q.5** The average temperature of a certain city on different days is as follows:  
Monday, Tuesday, Wednesday and Thursday =  $42^\circ$   
Tuesday, Wednesday, Thursday and Friday =  $44^\circ$   
What is the temperature on Friday if the ratio of the temperature on Monday and Friday is 3: 5?

- Ans
- 1.  $42^\circ$
  - 2.  $44^\circ$
  - 3.  $20^\circ$
  - 4.  $15^\circ$

Question ID : 26433091895  
Status : Answered  
Chosen Option : 2

**Q.6** Three men and two women can finish a work in  $\frac{120}{13}$  days. Two men and three women can finish the same in 10 days. One man and one woman start the work and after 12 days, 1 more man joins the work. After three more days, it is directed to engage more men or women to finish the work the next day. How many minimum more men or women must be engaged to complete the work as per direction?

- Ans**
- 1. Either 15 women or 9 men
  - 2. 5 men and 10 women
  - 3. Either 14 women or 10 men
  - 4. 7 men and 7 women

Question ID : 26433085470  
Status : Answered  
Chosen Option : 2

**Q.7** A lady goes from home to office at a speed of 40 km/h, and returns back at a speed of 70 km/h. What is her average speed during the journey?

- Ans**
- 1.  $45\frac{1}{11}$  km/h
  - 2.  $50\frac{10}{11}$  km/h
  - 3.  $40\frac{8}{11}$  km/h
  - 4.  $55\frac{7}{11}$  km/h

Question ID : 26433079847  
Status : Answered  
Chosen Option : 4

**Q.8** Find the third proportional to 16 and 320.

- Ans**
- 1. 6400
  - 2. 3200
  - 3. 8000
  - 4. 2100

Question ID : 26433076187  
Status : Answered  
Chosen Option : 1

**Q.9** The price of a commodity increases by 10% from 2020 to 2021 and it again increases by 15% from 2021 to 2022. The difference in the prices in 2020 and 2022 is ₹35. What is the price of the commodity (in ₹) in 2021 (rounded up to one decimal place)?

- Ans**
- 1. 145.3
  - 2. 154.3
  - 3. 314.5
  - 4. 134.5

Question ID : 26433085433  
Status : Answered  
Chosen Option : 2

Q.10 An electric geyser is sold at Rs.7,100 after reducing Rs.244 in addition to two successive discounts of 15% and 4% on the marked price. Find the marked price (in Rs.) of the geyser.

- Ans  1. 9,000  
 2. 8,800  
 3. 8,500  
 4. 8,200

Question ID : 26433075912  
Status : Answered  
Chosen Option : 1

Q.11 In a discount scheme, there is 50% discount on the marked price of Rs.500, but at the end it is sold for Rs.200. What additional discount did the customer get?

- Ans  1. 30%  
 2. 22%  
 3. 20%  
 4. 25%

Question ID : 26433083044  
Status : Answered  
Chosen Option : 1

Q.12 An article is marked at Rs.7,500 and available at a discount of 12%. The shopkeeper gives another off-season discount to the buyer and sell the article for Rs.5,400. Find the off-season discount. (Correct to two decimals places.)

- Ans  1. 18.18%  
 2. 19.53%  
 3. 18.95%  
 4. 19.63%

Question ID : 26433075529  
Status : Not Answered  
Chosen Option : --

Q.13 A dishonest dealer professes to sell his goods at the cost price but uses a false weight of 950 g instead of 1 kg. What is his gain percentage?

- Ans  1.  $5\frac{3}{19}\%$   
 2. 5%  
 3.  $5\frac{1}{19}\%$   
 4.  $5\frac{5}{19}\%$

Question ID : 26433075467  
Status : Not Answered  
Chosen Option : --

Q.14 The third proportional to  $a^3 + b^3$  and  $a^2 + ab + b^2$ , when  $a = 2$  and  $b = 3$  is:  
(correct to 2 decimal places)

- Ans
- 1. 8.56
  - 2. 5.83
  - 3. 10
  - 4. 10.31

Question ID : 26433081578  
Status : Not Answered  
Chosen Option : --

Q.15 The material of a solid right circular cylinder is converted into the shape of a solid cone of equal radius. If the height of the cylinder is 8.8 cm, then the height of the cone is:

- Ans
- 1. 8.8 cm
  - 2. 35.2 cm
  - 3. 17.6 cm
  - 4. 26.4 cm

Question ID : 26433087412  
Status : Not Answered  
Chosen Option : --

Q.16 From 2011 to 2014, a town's population is increasing at the rate of 2% annually. If its population was 13,265 in 2014, then what would have been its population (Approximately) in 2011?

- Ans
- 1. 12500
  - 2. 12275
  - 3. 12250
  - 4. 12000

Question ID : 26433091563  
Status : Answered  
Chosen Option : 1

Q.17 A stock of food is enough for 315 men for 48 days. For how many days the same stock of food is enough, if 45 more men join?

- Ans
- 1. 46
  - 2. 42
  - 3. 48
  - 4. 44

Question ID : 26433079897  
Status : Not Answered  
Chosen Option : --

Q.18 If the number 40 is increased by 40%, then what will be the actual increase?

- Ans
- 1. 42
  - 2. 28
  - 3. 56
  - 4. 16

Question ID : 26433075907  
Status : Answered  
Chosen Option : 3

Q.19 Find the square of the sum of the digits of the smallest number divisible by both 18 and 24.

- Ans
- 1. 64
  - 2. 121
  - 3. 81
  - 4. 100

Question ID : 264330116661  
Status : Answered  
Chosen Option : 1

Q.20 A man can row upstream at 12 km/h and downstream at 20 km/h. Find the man's rowing speed in still water, and the rate of current.

- Ans
- 1. 16 km/h and 4 km/h
  - 2. 32 km/h and 8 km/h
  - 3. 32 km/h and 4 km/h
  - 4. 16 km/h and 8 km/h

Question ID : 26433076203  
Status : Answered  
Chosen Option : 4

Section : Part-D-English

Q.1 Select the most appropriate option that can substitute the underlined segment in the given sentence.

The road which connected for two villages is now deserted.

- Ans
- 1. that connected for
  - 2. will connect the
  - 3. that connected the
  - 4. which connects of

Question ID : 26433088990  
Status : Answered  
Chosen Option : 3

Q.2 Select the most appropriate option to fill in the blank with the synonym of the underlined word.

The casual nature of the student destroyed his studies and \_\_\_\_\_ his future.

- Ans
- 1. ruined
  - 2. skyrocketed
  - 3. rained
  - 4. traced

Question ID : 26433094736  
Status : Answered  
Chosen Option : 1

Q.3 Select the most appropriate ANTONYM of the given word.

Succinct

- Ans  1. Lengthy  
 2. Empty  
 3. Hasty  
 4. Hearty

Question ID : 26433091823  
Status : Not Answered  
Chosen Option : --

Q.4 Select the most appropriate ANTONYM of the given word.

Cluster

- Ans  1. Consort  
 2. Group  
 3. Individual  
 4. Special

Question ID : 26433084748  
Status : Answered  
Chosen Option : 3

Q.5 Select the most appropriate synonym of the given word.

Despise

- Ans  1. Elevate  
 2. Hate  
 3. Eradicate  
 4. Revere

Question ID : 26433084665  
Status : Not Answered  
Chosen Option : --

Q.6 Select the correct idiom that can substitute the italicised group of words in the given sentence.

Will humanity overcome the greed of leaders all around the world? This is the *most important issue to be discussed today.*

- Ans  1. burn the candle at both ends  
 2. burning question  
 3. burn a hole in the pocket  
 4. burn one's fingers

Question ID : 26433084758  
Status : Not Answered  
Chosen Option : --

Q.7 Select the most appropriate homonym to fill in the blank.  
The construction \_\_\_\_\_ was far from his home.

- Ans  1. cite  
 2. sight  
 3. site  
 4. cyte

Question ID : 26433060048  
Status : Answered  
Chosen Option : 3

**Q.8 Select the sentence that contains the MISSPELT word from the given options.**

- Ans**  1. Both of them were best friends, now they are at daggers drawn.
2. As if to fill the small hours of that cold night with warm thoughts, I picked up the book and started browsing.
3. Without the slightest warning, something new breaks into your life that you may be completely unconscious of.
4. The gist of the quote was that all reasonable men adoopt themselves to the world.

Question ID : 26433073882  
Status : Not Answered  
Chosen Option : --

**Q.9 Select the most appropriate spelling that can correctly substitute the misspelt underlined segment in the given sentence.**

He acquiesced to the plans his parents had made for him.

- Ans**  1. acquiesced
2. acquised
3. acquissed
4. aquissed

Question ID : 26433071937  
Status : Not Answered  
Chosen Option : --

**Q.10 Select the most appropriate meaning of the given idiom.**

**The pot calling the kettle black**

- Ans**  1. Preparing the tea without boiling water
2. People are guilty of the very fault they identify in others
3. Speaking strangely in an official meeting
4. Making things ready quickly

Question ID : 26433073488  
Status : Not Answered  
Chosen Option : --

**Q.11 Select the most appropriate set of words to complete the sentence.**

I will not spend a single \_\_\_\_\_ on a bottle of perfume until I know that I love its \_\_\_\_\_.

- Ans**  1. cent; scent
2. sent; cent
3. scent; cent
4. scent; sent

Question ID : 26433088874  
Status : Not Answered  
Chosen Option : --

**Q.12** Select the word segment that substitutes (replaces) the bracketed word segment correctly and completes the sentence meaningfully.

Wear rubber gloves while chopping chillies (as it could irritate the skin).

- Ans
- 1. as these could irritate the skin
  - 2. as they can irritate the skin
  - 3. as it would irritate the skin
  - 4. as these would irritate the skin

Question ID : 26433088959  
Status : Not Answered  
Chosen Option : --

**Q.13** Select the most appropriate option that can substitute the underlined segment in the given sentence.

He very pleased that you have passed with distinction.

- Ans
- 1. He is very pleased
  - 2. He will very please
  - 3. He is very please
  - 4. He has very pleased

Question ID : 264330101411  
Status : Not Answered  
Chosen Option : --

**Q.14** Parts of the following sentence have been underlined and given as options. Select the option that contains an error.

We must acknowledge the fact that we had been visited Paris many times with friends.

- Ans
- 1. must
  - 2. had been
  - 3. acknowledge
  - 4. visited

Question ID : 26433089371  
Status : Not Answered  
Chosen Option : --

**Q.15** Select the most appropriate synonym of the underlined word.

He was curious to know his result.

- Ans
- 1. Ingenious
  - 2. Inquisitive
  - 3. Indifferent
  - 4. Indiscriminate

Question ID : 26433084683  
Status : Not Answered  
Chosen Option : --



**Comprehension:**

In the following passage, some words have been deleted. Read the passage carefully and select the most appropriate option to fill in each blank.

I think that perhaps the sky is a (1) \_\_\_\_\_ sea of fresh water and we, (2) \_\_\_\_\_ walking under it, walk on top of it; perhaps we see everything (3) \_\_\_\_\_ down and the earth is a (4) \_\_\_\_\_ of sky, so that when we die, we fall and (5) \_\_\_\_\_ into the sky.

**SubQuestion No : 16**

**Q.16 Select the most appropriate option to fill in blank number 1.**

- Ans**  1. minty  
 2. vigilant  
 3. huge  
 4. allotted

Question ID : 26433089331  
Status : Not Answered  
Chosen Option : --

**Comprehension:**

In the following passage, some words have been deleted. Read the passage carefully and select the most appropriate option to fill in each blank.

I think that perhaps the sky is a (1) \_\_\_\_\_ sea of fresh water and we, (2) \_\_\_\_\_ walking under it, walk on top of it; perhaps we see everything (3) \_\_\_\_\_ down and the earth is a (4) \_\_\_\_\_ of sky, so that when we die, we fall and (5) \_\_\_\_\_ into the sky.

**SubQuestion No : 17**

**Q.17 Select the most appropriate option to fill in blank number 2.**

- Ans**  1. primarily  
 2. stubbornly  
 3. instead of  
 4. coldly

Question ID : 26433089332  
Status : Not Answered  
Chosen Option : --

**Comprehension:**

In the following passage, some words have been deleted. Read the passage carefully and select the most appropriate option to fill in each blank.

I think that perhaps the sky is a (1) \_\_\_\_\_ sea of fresh water and we, (2) \_\_\_\_\_ walking under it, walk on top of it; perhaps we see everything (3) \_\_\_\_\_ down and the earth is a (4) \_\_\_\_\_ of sky, so that when we die, we fall and (5) \_\_\_\_\_ into the sky.

**SubQuestion No : 18**

**Q.18 Select the most appropriate option to fill in blank number 3.**

- Ans**  1. blow  
 2. upside  
 3. look  
 4. glow

Question ID : 26433089333  
Status : Not Answered  
Chosen Option : --

**Comprehension:**

In the following passage, some words have been deleted. Read the passage carefully and select the most appropriate option to fill in each blank.

I think that perhaps the sky is a (1) \_\_\_\_\_ sea of fresh water and we, (2) \_\_\_\_\_ walking under it, walk on top of it; perhaps we see everything (3) \_\_\_\_\_ down and the earth is a (4) \_\_\_\_\_ of sky, so that when we die, we fall and (5) \_\_\_\_\_ into the sky.

**SubQuestion No : 19**

**Q.19** Select the most appropriate option to fill in blank number 4.

- Ans**
- 1. selection
  - 2. partition
  - 3. kind
  - 4. label

Question ID : 26433089334  
Status : Not Answered  
Chosen Option : --

**Comprehension:**

In the following passage, some words have been deleted. Read the passage carefully and select the most appropriate option to fill in each blank.

I think that perhaps the sky is a (1) \_\_\_\_\_ sea of fresh water and we, (2) \_\_\_\_\_ walking under it, walk on top of it; perhaps we see everything (3) \_\_\_\_\_ down and the earth is a (4) \_\_\_\_\_ of sky, so that when we die, we fall and (5) \_\_\_\_\_ into the sky.

**SubQuestion No : 20**

**Q.20** Select the most appropriate option to fill in blank number 5.

- Ans**
- 1. swing
  - 2. climb
  - 3. draw
  - 4. sink

Question ID : 26433089335  
Status : Not Answered  
Chosen Option : --

Section : Part-D-Hindi

**Q.1** 'कोरा जवाब देना' मुहावरे का सही अर्थ है -

- Ans**
- 1. अर्थहीन बात करना
  - 2. साफ इंकार करना
  - 3. चुप हो जाना
  - 4. अपमान करना

Question ID : 26433065919  
Status : Not Answered  
Chosen Option : --

**Q.2** निम्न वाक्यांश के लिए एक शब्द क्या होगा?  
जिसका कोई शत्रु नहीं जनमा है

- Ans**
- 1. अज्ञातसूत
  - 2. अजातशत्रु
  - 3. अज्ञातशत्रु
  - 4. अजातसूत

Question ID : 26433070088  
Status : Not Answered  
Chosen Option : --

Q.3 वर्तनी की दृष्टि से शुद्ध वाक्य का चयन कीजिए-

- Ans  1. उसे तार मिला और वह तुरंत घर से चल पड़ा।  
 2. यद्यपि वह उनके घर गया था, तथपि उनसे भेट नहीं हुई।  
 3. मुझे प्रसननता है कि तुम स्वस्थ हो गए।  
 4. वह बड़े-बड़े गृन्थ पढ़ता था ताकि विद्वान बन जाए।

Question ID : 26433062893  
Status : Not Answered  
Chosen Option : --

Q.4 विकल्पों में दिए गए समानार्थी शब्दों में से सर्वोचित शब्द का प्रयोग करके दिए गए वाक्य में रिक्त स्थान की पूर्ति कीजिए।  
कक्षा में प्रवेश करते ही छात्रों ने शिक्षक का \_\_\_\_\_ किया।

- Ans  1. अभिवादन  
 2. सत्कार  
 3. अभिनन्दन  
 4. स्वागत

Question ID : 26433074416  
Status : Not Answered  
Chosen Option : --

Q.5 'छोटे कद का आदमी' इस वाक्य खंड के लिए उचित शब्द निम्न में से क्या होगा?

- Ans  1. शैव  
 2. क्रीत  
 3. बौना  
 4. यात्री

Question ID : 26433063055  
Status : Not Answered  
Chosen Option : --

Q.6 '\_\_\_\_\_ का अंतर होना' सही विकल्प का चयन कर इस मुहावरे को पूरा करें।

- Ans  1. दाएं बाएं  
 2. आमने सामने  
 3. आकाश पाताल  
 4. ऊपर नीचे

Question ID : 26433066816  
Status : Not Answered  
Chosen Option : --

Q.7 निम्न वाक्य के रिक्त स्थान पर रेखांकित शब्द का उपयुक्त विलोम शब्द कौन-सा होगा?  
घृणा को \_\_\_\_\_ से जीतो।

- Ans  1. प्रेम  
 2. लोभ  
 3. ईर्ष्या  
 4. गुस्से

Question ID : 26433072619  
Status : Not Answered  
Chosen Option : --

Q.8 'निशाचर \_\_\_\_\_।' उपर्युक्त वाक्य में रिक्त स्थान के लिए उपयुक्त विकल्प निम्न में से क्या होगा?

- Ans
- 1. से अभिप्राय है - निशा को चुराने वाला
  - 2. से अभिप्राय है - रात्रि में चरने वाला
  - 3. से अभिप्राय है - रात्रि में विचरण करने वाला
  - 4. से अभिप्राय है - रात्रि में चोरी करने वाला

Question ID : 26433067045  
Status : Not Answered  
Chosen Option : --

Q.9 'अमन और कबीर 'मित्र' हैं।' विकल्पों में से कौन सा इस वाक्य में रेखांकित 'मित्र' शब्द का पर्यायवाची शब्द नहीं है?

- Ans
- 1. सहचर
  - 2. रैना
  - 3. मीत
  - 4. दोस्त

Question ID : 26433085068  
Status : Not Answered  
Chosen Option : --

Q.10 निम्नलिखित वाक्य में रेखांकित खंड के स्थान पर प्रयुक्त होने वाले सबसे उपयुक्त विकल्प का चयन कीजिए।  
उसके पाँच सौ रुपये जुर्माना हुआ।

- Ans
- 1. उसे
  - 2. उसकी
  - 3. उसी
  - 4. वह

Question ID : 26433079572  
Status : Not Answered  
Chosen Option : --

Q.11 निम्नलिखित विकल्पों में से 'जिसे सबसे पहले गिनना उचित हो' वाक्यांश के लिए एक सार्थक शब्द क्या होगा ?

- Ans
- 1. अक्षम्य
  - 2. अग्रगण्य
  - 3. सुगम्य
  - 4. नगण्य

Question ID : 26433062532  
Status : Not Answered  
Chosen Option : --

Q.12 निम्नलिखित विकल्पों में से किस एक वाक्य में विशेषण का उचित प्रयोग किया गया है?

- Ans
- 1. वह अच्छा लड़का है।
  - 2. राम पढ़ता है।
  - 3. वह कानपुर गया।
  - 4. गीता खेलती है।

Question ID : 26433062962  
Status : Not Answered  
Chosen Option : --

Q.13 'रागिनी ने जब वीणा बजाना शुरू किया तो उसके स्वर से सारा वातावरण \_\_\_\_\_ हो गया।' उपरोक्त वाक्य में रिक्त स्थान की पूर्ति निम्न में से सही शब्द चुनकर कीजिए।

- Ans  1. झंक्रत  
 2. झंकृत  
 3. झनक्रत  
 4. झनकृत

Question ID : 26433069705  
Status : Not Answered  
Chosen Option : --

Q.14 'ब्रह्मा' के उपयुक्त पर्यायवाची शब्द से वाक्य पूर्ण कीजिए।  
\_\_\_\_\_ की उपासना कीजिए।

- Ans  1. लोकेश  
 2. नरेश  
 3. भूतेश  
 4. पुरंदर

Question ID : 26433063084  
Status : Not Answered  
Chosen Option : --

Q.15 निम्नलिखित विकल्पों में से किस एक वाक्य में गुणवाचक विशेषण का उचित प्रयोग नहीं किया गया है?

- Ans  1. रमेश का चेहरा गोल है।  
 2. राम सुन्दर बालक है।  
 3. नीरज दिल्ली में रहता है।  
 4. श्याम अच्छा लड़का है।

Question ID : 26433062973  
Status : Not Answered  
Chosen Option : --

#### Comprehension:

प्रश्न संख्या 1 से 5 तक के उत्तर दिए गए गद्यांश के आधार पर दीजिए।

ऋतुराज वसंत के आगमन से ही शीत का भयंकर प्रकोप भाग गया। पतझड़ में पश्चिम-पवन ने जीर्ण-शीर्ण 1.

\_\_\_\_\_ को गिराकर लताकुंजों, पेड़-पौधों को स्वच्छ और निर्मल बना दिया। वृक्षों और लताओं के अंग में 2.

पत्तियों के प्रस्फुटन से यौवन की मादकता छा गयी। कनेर, करवीर, मदार, पाटल, इत्यादि 3. \_\_\_\_\_

की सुगंधि दिग्दिगंत में अपनी मादकता का संचार करने लगी। न शीत की कठोरता, न ग्रीष्म का 4. \_\_\_\_\_।

समशीतोष्ण वातावरण में प्रत्येक 5. \_\_\_\_\_ की नस-नस में उत्फुल्लता और उमंग की लहरें उठ रही हैं। गेहूँ के सुनहले बालों से पवन स्पर्श के कारण रुनझुन का संगीत फूट रहा है। पत्तों से अंधेरों पर सोया हुआ संगीत मुखर हो गया है।

SubQuestion No : 16

Q.16 विकल्पों में से उपयुक्त शब्द चुनकर रिक्त स्थान 1 की पूर्ति कीजिए।

- Ans  1. शाखाओं  
 2. पत्रों  
 3. पल्लवों  
 4. पुष्पों

Question ID : 26433069937  
Status : Not Answered  
Chosen Option : --

**Comprehension:**

प्रश्न संख्या 1 से 5 तक के उत्तर दिए गए गद्यांश के आधार पर दीजिए।

ऋतुराज वसंत के आगमन से ही शीत का भयंकर प्रकोप भाग गया। पतझड़ में पश्चिम-पवन ने जीर्ण-शीर्ण 1. \_\_\_\_\_ को गिराकर लताकुंजों, पेड़-पौधों को स्वच्छ और निर्मल बना दिया। वृक्षों और लताओं के अंग में 2. \_\_\_\_\_ पत्तियों के प्रस्फुटन से यौवन की मादकता छा गयी। कनेर, करवीर, मदार, पाटल, इत्यादि 3. \_\_\_\_\_ की सुगंधि दिग्दिगत में अपनी मादकता का संचार करने लगी। न शीत की कठोरता, न ग्रीष्म का 4. \_\_\_\_\_। समशीतोष्ण वातावरण में प्रत्येक 5. \_\_\_\_\_ की नस-नस में उत्फुल्लता और उमंग की लहरें उठ रही हैं। गेहूँ के सुनहले बालों से पवन स्पर्श के कारण रुनझुन का संगीत फूट रहा है। पत्तों से अँधेरों पर सोया हुआ संगीत मुखर हो गया है।

**SubQuestion No : 17**

Q.17 विकल्पों में से उपयुक्त शब्द चुनकर रिक्त स्थान 2 की पूर्ति कीजिए।

- Ans  1. सूक्ष्म  
 2. नूतन  
 3. रंगीन  
 4. प्राचीन

Question ID : 26433069938  
Status : Not Answered  
Chosen Option : --

**Comprehension:**

प्रश्न संख्या 1 से 5 तक के उत्तर दिए गए गद्यांश के आधार पर दीजिए।

ऋतुराज वसंत के आगमन से ही शीत का भयंकर प्रकोप भाग गया। पतझड़ में पश्चिम-पवन ने जीर्ण-शीर्ण 1. \_\_\_\_\_ को गिराकर लताकुंजों, पेड़-पौधों को स्वच्छ और निर्मल बना दिया। वृक्षों और लताओं के अंग में 2. \_\_\_\_\_ पत्तियों के प्रस्फुटन से यौवन की मादकता छा गयी। कनेर, करवीर, मदार, पाटल, इत्यादि 3. \_\_\_\_\_ की सुगंधि दिग्दिगत में अपनी मादकता का संचार करने लगी। न शीत की कठोरता, न ग्रीष्म का 4. \_\_\_\_\_। समशीतोष्ण वातावरण में प्रत्येक 5. \_\_\_\_\_ की नस-नस में उत्फुल्लता और उमंग की लहरें उठ रही हैं। गेहूँ के सुनहले बालों से पवन स्पर्श के कारण रुनझुन का संगीत फूट रहा है। पत्तों से अँधेरों पर सोया हुआ संगीत मुखर हो गया है।

**SubQuestion No : 18**

Q.18 विकल्पों में से उपयुक्त शब्द चुनकर रिक्त स्थान 3 की पूर्ति कीजिए।

- Ans  1. पुष्पों  
 2. डालियों  
 3. जड़ों  
 4. पत्तों

Question ID : 26433069939  
Status : Not Answered  
Chosen Option : --

**Comprehension:**

प्रश्न संख्या 1 से 5 तक के उत्तर दिए गए गद्यांश के आधार पर दीजिए।

ऋतुराज वसंत के आगमन से ही शीत का भयंकर प्रकोप भाग गया। पतझड़ में पश्चिम-पवन ने जीर्ण-शीर्ण 1. \_\_\_\_\_ को गिराकर लताकुंजों, पेड़-पौधों को स्वच्छ और निर्मल बना दिया। वृक्षों और लताओं के अंग में 2. \_\_\_\_\_ पत्तियों के प्रस्फुटन से यौवन की मादकता छा गयी। कनेर, करवीर, मदार, पाटल, इत्यादि 3. \_\_\_\_\_ की सुगंधि दिग्दिगत में अपनी मादकता का संचार करने लगी। न शीत की कठोरता, न ग्रीष्म का 4. \_\_\_\_\_। समशीतोष्ण वातावरण में प्रत्येक 5. \_\_\_\_\_ की नस-नस में उत्फुल्लता और उमंग की लहरें उठ रही हैं। गेहूँ के सुनहले बालों से पवन स्पर्श के कारण रुनझुन का संगीत फूट रहा है। पत्तों से अँधेरों पर सोया हुआ संगीत मुखर हो गया है।

**SubQuestion No : 19**

Q.19 विकल्पों में से उपयुक्त शब्द चुनकर रिक्त स्थान 4 की पूर्ति कीजिए।

- Ans  1. ताप  
 2. गुस्सा  
 3. आक्रमण  
 4. आवेश

Question ID : 26433069940  
Status : Not Answered  
Chosen Option : --

**Comprehension:**

प्रश्न संख्या 1 से 5 तक के उत्तर दिए गए गद्यांश के आधार पर दीजिए।

ऋतुराज वसंत के आगमन से ही शीत का भयंकर प्रकोप भाग गया। पतझड़ में पश्चिम-पवन ने जीर्ण-शीर्ण 1. \_\_\_\_\_ को गिराकर लताकुंजों, पेड़-पौधों को स्वच्छ और निर्मल बना दिया। वृक्षों और लताओं के अंग में 2. \_\_\_\_\_ पत्तियों के प्रस्फुटन से यौवन की मादकता छा गयी। कनेर, करवीर, मदार, पाटल, इत्यादि 3. \_\_\_\_\_ की सुगंधि दिग्दिगत में अपनी मादकता का संचार करने लगी। न शीत की कठोरता, न ग्रीष्म का 4. \_\_\_\_\_। समशीतोष्ण वातावरण में प्रत्येक 5. \_\_\_\_\_ की नस-नस में उत्फुल्लता और उमंग की लहरें उठ रही हैं। गेहूँ के सुनहले बालों से पवन स्पर्श के कारण रुनझुन का संगीत फूट रहा है। पत्तों से अँधेरों पर सोया हुआ संगीत मुखर हो गया है।

**SubQuestion No : 20**

Q.20 विकल्पों में से उपयुक्त शब्द चुनकर रिक्त स्थान 5 की पूर्ति कीजिए।

- Ans
- 1. पशु
  - 2. वस्तु
  - 3. पक्षी
  - 4. प्राणी

Question ID : 26433069941

Status : Not Answered

Chosen Option : --

KD Job Updates

# Constable GD in CAPFs SSF Rifleman GD in Assam Rifles and Sepoy in NCB Examination 2022

Roll Number	<b>KD Job Updates</b>
Candidate Name	<b>KD Job Updates</b>
Venue Name	iON Digital Zone iDZ 2 Sector 62
Exam Date	27/01/2023
Exam Time	5:15 PM - 6:15 PM
Subject	Constable GD Examination 2022

## Section : Part-A-General Intelligence and Reasoning

**Q.1** Which letter-cluster will replace the question mark (?) to complete the given series?  
DCAB, ?, NMKL, SRPQ, XWUV

- Ans
- 1. EFIH
  - 2. EFHI
  - 3. HIFG
  - 4. IHFG

Question ID : 26433067715  
Status : Answered  
Chosen Option : 4

**Q.2** Which of the following interchanges of signs would make the given equation correct?  
 $192 \div 16 + 8 \times 25 - 95 = 26$

- Ans
- 1.  $\times$  and  $-$
  - 2.  $-$  and  $+$
  - 3.  $+$  and  $\times$
  - 4.  $+$  and  $+$

Question ID : 26433081085  
Status : Answered  
Chosen Option : 3

**Q.3** Which option represents the correct order of the given words as they would appear in the English dictionary?

- 1 demolish
- 2 demon
- 3 destroy
- 4 decor
- 5 detour

- Ans
- 1. 4,1,2,3,5
  - 2. 4,2,1,5,3
  - 3. 4,5,1,2,3
  - 4. 4,1,3,2,5

Question ID : 26433069287  
Status : Answered  
Chosen Option : 1



**Q.4** Select the set in which the numbers are related in the same way as are the numbers of the following sets.

(NOTE : Operations should be performed on the whole numbers, without breaking down the numbers into its constituent digits. E.g. 13 – Operations on 13 such as adding/subtracting/multiplying etc. to 13 can be performed. Breaking down 13 into 1 and 3 and then performing mathematical operations on 1 and 3 is not allowed)  
(13, 390, 6)  
(9, 180, 4)

Ans  1. (11, 385, 7)

2. (9, 220, 5)

3. (8, 224, 4)

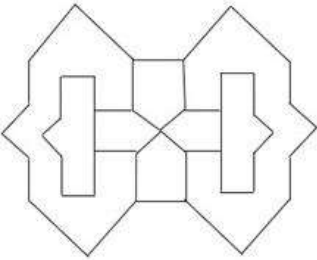
4. (12, 432, 9)

Question ID : 26433076534

Status : Answered

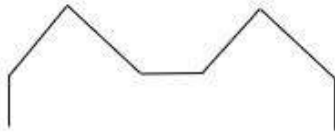
Chosen Option : 1

**Q.5** Select the option figure which is embedded in the given figure. (Rotation is NOT allowed)

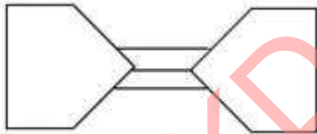


Ans

1.



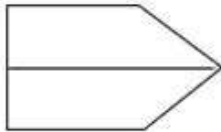
2.



3.



4.



Question ID : 26433069353

Status : Answered

Chosen Option : 1

Q.6 A @ B means 'A is the spouse of B'.  
A & B means 'A is the father of B'.  
A # B means 'A is the mother of B'.  
A % B means 'A is the sister of B'.  
If H @ V & K % Q # F, then how is H related to F?

- Ans
- 1. Mother-in-law
  - 2. Maternal grandmother
  - 3. Paternal grandfather
  - 4. Father-in-law

Question ID : 26433069618  
Status : Answered  
Chosen Option : 1

Q.7 Which of the following numbers will replace the question mark (?) in the given series?  
1, 5, 16, 41, 87, 161, ?

- Ans
- 1. 206
  - 2. 266
  - 3. 226
  - 4. 270

Question ID : 26433069116  
Status : Answered  
Chosen Option : 2

Q.8 Six people M, N, O, P, Q and R are sitting around a circular table, facing the centre. Q is the immediate neighbour of M and R. N is sitting third to the left of Q. O is the immediate neighbour of R and N. R is sitting second to the left of N. Who is sitting between M and N when considered from the right of N?

- Ans
- 1. Q
  - 2. R
  - 3. O
  - 4. P

Question ID : 26433081517  
Status : Answered  
Chosen Option : 4

Q.9 Which of the following numbers will replace the question mark (?) in the given series?  
132, 154, 176, ?, 220

- Ans
- 1. 184
  - 2. 192
  - 3. 198
  - 4. 189

Question ID : 26433076735  
Status : Answered  
Chosen Option : 3

Q.10 In a certain code language, If CAB is coded as 75 and DIP is coded as 52, how will FLY be coded in that language?

- Ans
- 1. 42
  - 2. 38
  - 3. 26
  - 4. 44

Question ID : 26433068064  
Status : Not Answered  
Chosen Option : --

Q.11 Select the option that is related to the fifth letter-cluster in the same way as the second letter-cluster is related to the first letter-cluster and the fourth letter-cluster is related to the third letter-cluster.

ONCE: LLVS :: LIST: OQFD :: PACK: ?

- Ans
- 1. IXVM
  - 2. KZXP
  - 3. KYVM
  - 4. JYWO

Question ID : 26433057499  
Status : Answered  
Chosen Option : 3

Q.12 Which two signs should be interchanged to make the below equation mathematically correct?

$$24 + 36 \times 32 - 8 \div 20 = 148$$

- Ans
- 1. - and +
  - 2. + and ÷
  - 3. + and ×
  - 4. ÷ and -

Question ID : 264330117509  
Status : Answered  
Chosen Option : 4

Q.13 Select the letter-cluster from among the given options that can replace the question mark (?) in the following series.

RBWP, TWYR, VRAT, ?, ZHEX

- Ans
- 1. XMCV
  - 2. FVGW
  - 3. FTXH
  - 4. XCVM

Question ID : 26433074737  
Status : Answered  
Chosen Option : 1

Q.14 Select the correct mirror image of the given figure when the mirror is placed at MN as shown below.

S O B x z F G L

M

|

N

Ans

- ✓ 1. L F G z x B O S
- ✗ 2. L G F z x B O S
- ✗ 3. L F G z x B O S
- ✗ 4. L F G z x B O S

Question ID : 26433080809

Status : Answered

Chosen Option : 1

Q.15 Three Statements are given followed by Three conclusions numbered I, II and III. Assuming the statements to be true, even if they seem to be at variance with commonly known facts, decide which of the conclusions logically follow(s) from the statements.

Statements:

All books are hard.  
Some hard are stone.  
Some stone are cars.

Conclusions:

I. Some hard are books.  
II. All hard are stone.  
III. Some cars are stone.

- Ans
- ✗ 1. Both conclusions I and II follow.
  - ✗ 2. All conclusions follow.
  - ✓ 3. Both conclusions I and III follow.
  - ✗ 4. Both conclusions II and III follow.

Question ID : 26433074632

Status : Answered

Chosen Option : 3

Q.16 Which figure should replace the question mark (?) if the series were to be continued?

F	3	C	3	C	F	□	B	3	B	3	□	?
	V			B			C			A		
	B			V			A			C		
8	□	A	□	A	8	8	V	F	V	F	8	

Ans

✓ 1.

V	A	B
	3	
	F	
8	C	□

✗ 2.

□	A	8
	3	
	F	
B	C	V

✗ 3.

3	□	B
	C	
	A	
F	8	V

✗ 4.

V	F	B
	3	
	A	
8	C	□

Question ID : 26433076639

Status : Answered

Chosen Option : 1

Q.17 Six students are sitting around a circular table facing the centre. A sits to the immediate left of C. E sits third to the right of D. D is an immediate neighbour of C. B is an immediate neighbour of both E and F. Who is the immediate neighbour of C and E?

Ans ✗ 1. B

✓ 2. A

✗ 3. D

✗ 4. F

Question ID : 26433079502

Status : Answered

Chosen Option : 2

Q.18 In a code language, 'PAPER' is written as 'QCSIW' and 'BOARD' is written as 'CQDVI', how will 'PENCIL' be written in that language?

- Ans
- 1. RGQGNR
  - 2. QGQGNR
  - 3. QGPGNP
  - 4. PGQGNP

Question ID : 26433079390  
Status : Not Answered  
Chosen Option : --

Q.19 Select the option that is related to the third word in the same way as the second word is related to the first word (The words must be considered as meaningful English words and must not be related to each other based on the number of letters/consonants/vowels in the word).

Bouquet : Flower :: Chain : \_\_\_\_\_

- Ans
- 1. Heavy
  - 2. Link
  - 3. Plant
  - 4. Tree

Question ID : 26433078827  
Status : Answered  
Chosen Option : 2

Q.20 Three different positions of the same dice are shown. Find the number on the face opposite the face having '1'.

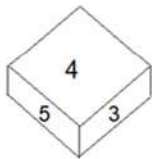


Figure 1

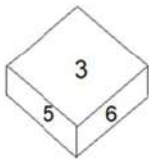


Figure 2

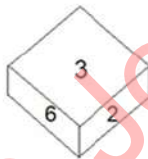


Figure 3

- Ans
- 1. 3
  - 2. 5
  - 3. 6
  - 4. 2

Question ID : 26433089451  
Status : Answered  
Chosen Option : 1

**Q.1 Under which scheme, 5 Crore LPG (Liquified Petroleum Gas) connections were provided to Below Poverty Line (BPL) families?**

- Ans**  1. Pradhan Mantri Ujjwala Yojana  
 2. Sansad Adarsh Gram Yojana  
 3. Skill India Mission  
 4. Beti Bachao Beti Padhao

Question ID : 264330116178  
Status : Answered  
Chosen Option : 1

**Q.2 The winter rain in Tamil Nadu is due to the \_\_\_\_\_.**

- Ans**  1. local air  
 2. north-east trade winds  
 3. south-west trade winds  
 4. temperate cyclone

Question ID : 26433089656  
Status : Answered  
Chosen Option : 2

**Q.3 Mopin is the cultural festival of which Indian state?**

- Ans**  1. Nagaland  
 2. Arunachal Pradesh  
 3. Maharashtra  
 4. Mizoram

Question ID : 264330109604  
Status : Answered  
Chosen Option : 4

**Q.4 Which of the following Articles of the Constitution of India empowers the President of India to pardon in case of punishment or sentence?**

- Ans**  1. Article 66  
 2. Article 72  
 3. Article 78  
 4. Article 65

Question ID : 26433074904  
Status : Answered  
Chosen Option : 1

**Q.5** Kelucharan Mohapatra won recognition in which dance form?

- Ans  1. Kuchipudi  
 2. Sattriya  
 3. Odissi  
 4. Chhau

Question ID : 264330115832  
Status : Not Answered  
Chosen Option : --

**Q.6** \_\_\_\_\_ is an asset pledged by a borrower, to a lender as security for a loan.

- Ans  1. Multilateral  
 2. Bilateral  
 3. Unilateral  
 4. Collateral

Question ID : 264330115296  
Status : Not Answered  
Chosen Option : --

**Q.7** Who has been appointed as the Deputy Election Commissioner of India in October 2022?

- Ans  1. Sunil Arora  
 2. Ajay Bhadoo  
 3. Om Prakash Rawat  
 4. Rajiv Kumar

Question ID : 264330114999  
Status : Answered  
Chosen Option : 3

**Q.8** Who was India's flag-bearer for the closing ceremony of the 18th Asian Games 2018?

- Ans  1. PT Usha  
 2. Rani Rampal  
 3. Hima Das  
 4. Neeraj Chopra

Question ID : 26433092321  
Status : Answered  
Chosen Option : 3



**Q.9** The term towards faster and more inclusive growth was coined in which Five year plan?

- Ans  1. 11th  
 2. 10th  
 3. 8th  
 4. 9th

Question ID : 264330116131  
Status : Not Answered  
Chosen Option : --

**Q.10** Hockey India League (HIL) started in which of the following year?

- Ans  1. 2011  
 2. 2013  
 3. 2012  
 4. 2010

Question ID : 264330116294  
Status : Answered  
Chosen Option : 2

**Q.11** Identify the correct statement about nuclear fission.

- Ans  1. The nucleus of a heavy atom, when bombarded with low-energy neutrons, can be split apart into lighter nuclei.  
 2. Nuclear fission is the coming together of high-energy electrons and low-energy neutrons.  
 3. The nucleus of a low-energy atom, when bombarded with high-energy neutrons, can be split apart into lighter nuclei.  
 4. The nucleus of a low-energy atom, when bombarded with high-energy neutrons, can be split apart into heavier nuclei.

Question ID : 26433096237  
Status : Not Answered  
Chosen Option : --

**Q.12** When did the infamous Jallianwala Bagh incident take place?

- Ans  1. 11 April 1919  
 2. 13 April 1920  
 3. 13 April 1919  
 4. 13 April 1918

Question ID : 264330106573  
Status : Answered  
Chosen Option : 3

Q.13 Identify the Mauryan king who gave up conquest after winning a war.

- Ans  1. Bindusara  
 2. Dashratha  
 3. Chandragupta Maurya  
 4. Ashoka

Question ID : 26433085214  
Status : Not Answered  
Chosen Option : --

Q.14 India has second largest \_\_\_\_\_ network in the world, aggregating to about 62.16 lakh km (2020–21).

- Ans  1. air  
 2. road  
 3. rail  
 4. sea

Question ID : 264330115543  
Status : Answered  
Chosen Option : 3

Q.15 According to the 2011 census, what is the population density (per square km) of India?

- Ans  1. 442  
 2. 382  
 3. 198  
 4. 298

Question ID : 264330116041  
Status : Answered  
Chosen Option : 1

Q.16 As of November 2022, who was the Chief Minister of Gujarat before elections held in 2022?

- Ans  1. Bhupendra Patel  
 2. Vijay Rupani  
 3. Dhanjibhai Patel  
 4. Isudan Gadhvi

Question ID : 264330114918  
Status : Answered  
Chosen Option : 1

**Q.17 Under which Five Year Plan in India, the implementation of the Family Planning Programme was amongst the major targets of the Plan?**

- Ans
- 1. Third
  - 2. Fifth
  - 3. Second
  - 4. Fourth

Question ID : 26433082235  
Status : Not Answered  
Chosen Option : --

**Q.18 Which of the following is NOT a source of protein?**

- Ans
- 1. Fish
  - 2. Meat
  - 3. Milk
  - 4. Lemon

Question ID : 264330115215  
Status : Answered  
Chosen Option : 4

**Q.19 The Kathakali dance form originated in which part of India?**

- Ans
- 1. North India
  - 2. South India
  - 3. East India
  - 4. West India

Question ID : 26433086708  
Status : Answered  
Chosen Option : 2

**Q.20 On which date was Andhra Pradesh formed?**

- Ans
- 1. 2 October 1956
  - 2. 26 January 1953
  - 3. 15 August 1953
  - 4. 1 November 1956

Question ID : 26433090660  
Status : Answered  
Chosen Option : 4

**Q.1** A and B together can do a piece of work in 21 days. B and C together can do it in 24 days. A and C together can do it in 33 days. In how many days approximately will A, B and C finish it together?

- Ans
- 1. 14 days
  - 2. 17 days
  - 3. 15 days
  - 4. 13 days

Question ID : 264330116862  
Status : Answered  
Chosen Option : 2

**Q.2** A and B together can do a piece of work in 20 days, while B alone can finish it in 25 days. How many days will A take to complete the same work alone?

- Ans
- 1. 150
  - 2. 60
  - 3. 100
  - 4. 80

Question ID : 26433079892  
Status : Answered  
Chosen Option : 3

**Q.3** Priya allows 5 percent discount on the marked price of her goods and still earns a profit of 18 percent. What is the cost price of an item, if its marked price is Rs. 944?

- Ans
- 1. Rs. 684
  - 2. Rs. 580
  - 3. Rs. 854
  - 4. Rs. 760

Question ID : 264330116747  
Status : Answered  
Chosen Option : 4

**Q.4** Find the fourth proportional of 3 hours 20 minutes, 1 hour 50 minutes, and 6 hours 20 minutes.

- Ans
- 1. 3 hours 19 minutes
  - 2. 4 hours 29 minutes
  - 3. 4 hours 19 minutes
  - 4. 3 hours 29 minutes

Question ID : 26433080120  
Status : Answered  
Chosen Option : 4

**Q.5** In a circular race of 5000 m, starting from the same point, the speeds of two contestants A and B are 36 km/h and 54 km/h, respectively. The difference between the time taken (in seconds) to meet for the first time when they are running in the opposite directions and when they are running in the same direction?

- Ans
- 1. 600
  - 2. 800
  - 3. 200
  - 4. 1000

Question ID : 26433066183  
Status : Not Answered  
Chosen Option : --

**Q.6** A ream of 500 pages is bought for ₹280, and packets of 25 pages are made from it. Each packet is sold for ₹18. Find the percentage profit or loss. (Rounded off up to one decimal place).

- Ans
- 1. 24.6% loss
  - 2. 28.6% profit
  - 3. 26.5% profit
  - 4. 24.5% profit

Question ID : 26433081707  
Status : Answered  
Chosen Option : 2

**Q.7** The diameter of a hemisphere is 6 cm. The ratio of the magnitudes of its curved surface area to the total surface area is:

- Ans
- 1. 2 : 3
  - 2. 1 : 2
  - 3. 3 : 5
  - 4. 1 : 3

Question ID : 26433075210  
Status : Answered  
Chosen Option : 1

**Q.8** Find the sum of the digits of the greatest number that can exactly divide 288 and 432.

- Ans
- 1. 12
  - 2. 4
  - 3. 3
  - 4. 9

Question ID : 264330116635  
Status : Answered  
Chosen Option : 1

Q.9 Three number are in the ratio of 4 : 5 : 6, and their LCM is 180. Their HCF is:

- Ans
- 1. 2
  - 2. 4
  - 3. 8
  - 4. 3

Question ID : 26433082352  
Status : Answered  
Chosen Option : 2

Q.10 If ratio of X to Y is 3 : 4, then determine the relation between X and Y.

- Ans
- 1. Both X is 75 percent of Y and Y is 133.33 percent of X
  - 2. X is 80 percent of Y
  - 3. X is 35 percent of Y
  - 4. Y is 120 percent of X

Question ID : 26433076005  
Status : Answered  
Chosen Option : 1

Q.11 A shopkeeper offers three successive discounts of 15%, 30% and 4% on an article. If the article is marked at ₹1,950, what is its selling price (in ₹, rounded off to the nearest tens)?

- Ans
- 1. 1,110
  - 2. 1,150
  - 3. 1,130
  - 4. 1,020

Question ID : 26433061891  
Status : Answered  
Chosen Option : 1

Q.12 The average of sales of an electronics shop in the years 2001, 2002, 2003 and 2004 is 1850, and that for the years 2002, 2003, 2004 and 2005 is 2125. If the sales in 2005 are 1200, then find the sales in 2001?

- Ans
- 1. 110
  - 2. 100
  - 3. 120
  - 4. 130

Question ID : 26433076302  
Status : Not Answered  
Chosen Option : --

Q.13 The population of a village increases by  $12\frac{1}{2}\%$  in the first year and decrease by 8% in the second year. If the present population of village is 3200, then what will be the population of the village after 2 years?

- Ans
- 1. 3312
  - 2. 3564
  - 3. 3412
  - 4. 3388

Question ID : 26433075681  
Status : Answered  
Chosen Option : 2

Q.14 Determine the fourth proportional to 11.6 m, 9.2 m, 32.8 m. (Consider up to two decimals)

- Ans
- 1. 20.01 m
  - 2. 28.01 m
  - 3. 22.01 m
  - 4. 26.01 m

Question ID : 26433081030  
Status : Answered  
Chosen Option : 3

Q.15 A, B and C run on a circular track. Time taken by A, B, and C to complete one round are 6 min, 8 min and 3 min respectively. If they start together at 5 p.m., then at what time will they meet again at the starting point?

- Ans
- 1. 5:12 p.m.
  - 2. 5:18 p.m.
  - 3. 5:08 p.m.
  - 4. 5:24 p.m.

Question ID : 26433076014  
Status : Not Answered  
Chosen Option : --

Q.16 If the radius of the base and the slant height of a cone are 17cm and 25 cm respectively, then what is the total surface area of the cone?

- Ans
- 1.  $2292 \text{ cm}^2$
  - 2.  $2266 \text{ cm}^2$
  - 3.  $2288 \text{ cm}^2$
  - 4.  $2244 \text{ cm}^2$

Question ID : 26433075708  
Status : Answered  
Chosen Option : 2

Q.17 Afzal's monthly income is Rs.35,000. He spends 20% of his monthly income on food, 30% on clothes, and 15% on rent. How much money does Afzal save monthly?

- Ans
- 1. Rs.16,660
  - 2. Rs.14,200
  - 3. Rs.12,250
  - 4. Rs.15,220

Question ID : 26433080297  
Status : Answered  
Chosen Option : 1

Q.18 A woman gains 30 percent by selling an article for a certain price. If she sells it at double price, then the profit made is :

- Ans
- 1. 140 percent
  - 2. 160 percent
  - 3. 120 percent
  - 4. 130 percent

Question ID : 26433079858  
Status : Answered  
Chosen Option : 2

Q.19 The average of 11 numbers is 7.5. What should be the 12th number added to them to make the average 8.5?

- Ans
- 1. 19.5
  - 2. 17.5
  - 3. 11.5
  - 4. 21.5

Question ID : 26433079844  
Status : Answered  
Chosen Option : 1

Q.20 Find the compound interest on ₹3,00,000, compounded half-yearly, for  $2\frac{1}{2}$  years at the rate of 20% per annum.

- Ans
- 1. ₹1,62,156
  - 2. ₹1,83,153
  - 3. ₹1,92,156
  - 4. ₹1,73,153

Question ID : 26433080125  
Status : Answered  
Chosen Option : 2



Q.1 Select the most appropriate synonym of the given word.

Reckon

- Ans  1. Relieve  
 2. Release  
 3. Think  
 4. Terminate

Question ID : 26433073637  
Status : Not Answered  
Chosen Option : --

Q.2 Select the most appropriate option that can substitute the underlined segment in the given sentence.

He has given us no reason to be prestigious of him.

- Ans  1. be proudly  
 2. be auspicious  
 3. be suspicious  
 4. be ambitious

Question ID : 26433088509  
Status : Not Answered  
Chosen Option : --

Q.3 The following sentence has been divided into parts. One of them may contain an error. Select the part that contains the error from the given options.

Tomorrow is a/ holiday for all /except me as/ I will writing my exam.

- Ans  1. I will writing my exam  
 2. holiday for all  
 3. Tomorrow is a  
 4. except me as

Question ID : 26433089823  
Status : Not Answered  
Chosen Option : --

Q.4 Select the most appropriate option to fill in the blank.

He visited his mother \_\_\_\_\_ after she was discharged from the hospital.

- Ans  1. now and then  
 2. by and by  
 3. round and round  
 4. more or less

Question ID : 26433084651  
Status : Not Answered  
Chosen Option : --

**Q.5** Select the correct option to substitute the underlined segment in the given sentence.

Let clear the doubts, if any.

- Ans
- 1. Let mine
  - 2. Let me
  - 3. Let myself
  - 4. Let my

Question ID : 26433092998  
Status : Not Answered  
Chosen Option : --

**Q.6** Select the most appropriate synonym of the given word.

**Noble**

- Ans
- 1. Agile
  - 2. Regular
  - 3. Humble
  - 4. Dignified

Question ID : 26433072191  
Status : Not Answered  
Chosen Option : --

**Q.7** Select the **INCORRECTLY** spelt word.

- Ans
- 1. Pester
  - 2. Referance
  - 3. Orientation
  - 4. Exaggerate

Question ID : 26433073601  
Status : Not Answered  
Chosen Option : --

**Q.8** Select the **INCORRECTLY** spelt word.

- Ans
- 1. Repugnent
  - 2. Malicious
  - 3. Perceive
  - 4. Vacuous

Question ID : 26433073605  
Status : Not Answered  
Chosen Option : --

Q.9 Select the correct word for the blanks in the given sentence.

Health is a state of \_\_\_\_\_ being, and a \_\_\_\_\_ is used to draw water from the ground.

- Ans  1. well  
 2. tubewell  
 3. fine  
 4. good

Question ID : 26433060540  
Status : Not Answered  
Chosen Option : --

Q.10 Select the most appropriate ANTONYM of the given word.

Erudite

- Ans  1. Ignorant  
 2. Civilized  
 3. Primeval  
 4. Inherent

Question ID : 26433071982  
Status : Not Answered  
Chosen Option : --

Q.11 Select the most appropriate ANTONYM of the underlying word in the given sentence and complete the sentence.

He was \_\_\_\_\_ by his brother's attitude, but his mother's words calmed him.

- Ans  1. acquitted  
 2. effaced  
 3. solaced  
 4. agitated

Question ID : 26433084711  
Status : Not Answered  
Chosen Option : --

Q.12 Select the most appropriate meaning of the given idiom.

Explore all avenues

- Ans  1. To discover new ideas  
 2. To discover new things  
 3. Try out every possibility to get a result  
 4. To discover new routes

Question ID : 26433072681  
Status : Not Answered  
Chosen Option : --

Q.13 Select the most appropriate meaning of the given idiom.

Spinning one's wheels

- Ans  1. To do a lot of work for achieving something  
 2. To make a lot of effort without achieving anything  
 3. To talk about random things  
 4. To talk about oneself for achieving something

Question ID : 26433072680  
Status : Not Answered  
Chosen Option : --

Q.14 Select the most appropriate homonym to fill in the blank.

He planned a weeklong \_\_\_\_\_ down the Nile.

- Ans  1. crews  
 2. cruse  
 3. crus  
 4. cruise

Question ID : 26433089073  
Status : Not Answered  
Chosen Option : --

Q.15 Select the most appropriate ANTONYM of the given word.

Obvious

- Ans  1. Plain  
 2. Straight  
 3. Clear  
 4. Cryptic

Question ID : 26433072271  
Status : Not Answered  
Chosen Option : --

**Comprehension:**

In the following passage, some words have been deleted. Read the passage carefully and select the most appropriate option to fill in each blank.

Amla tree is (1) \_\_\_\_\_ to be thousands of years old. It is called aamaleki and dhaatri in Sanskrit. Its botanical name is Emblica Officinalis. The amla tree is a medium (2) \_\_\_\_\_ tree with citrus fruits. It is found almost everywhere in India (3) \_\_\_\_\_ for some very high mountainous regions. It is found (4) \_\_\_\_\_ in Madhya Pradesh. The leaves are very small and have a close (5) \_\_\_\_\_ to those of Gulmohar. The amla tree has slender branches which grow upwards and surround the trees on all sides.

**SubQuestion No : 16**

**Q.16 Select the most appropriate option to fill in blank no. 1.**

- Ans  1. considered  
 2. reviewed  
 3. examined  
 4. contemplated

Question ID : 26433072256

Status : Not Answered

Chosen Option : --

**Comprehension:**

In the following passage, some words have been deleted. Read the passage carefully and select the most appropriate option to fill in each blank.

Amla tree is (1) \_\_\_\_\_ to be thousands of years old. It is called aamaleki and dhaatri in Sanskrit. Its botanical name is Emblica Officinalis. The amla tree is a medium (2) \_\_\_\_\_ tree with citrus fruits. It is found almost everywhere in India (3) \_\_\_\_\_ for some very high mountainous regions. It is found (4) \_\_\_\_\_ in Madhya Pradesh. The leaves are very small and have a close (5) \_\_\_\_\_ to those of Gulmohar. The amla tree has slender branches which grow upwards and surround the trees on all sides.

**SubQuestion No : 17**

**Q.17 Select the most appropriate option to fill in blank no. 2.**

- Ans  1. sized  
 2. sorted  
 3. assessed  
 4. weighed

Question ID : 26433072257

Status : Not Answered

Chosen Option : --

**Comprehension:**

In the following passage, some words have been deleted. Read the passage carefully and select the most appropriate option to fill in each blank.

Amla tree is (1) \_\_\_\_\_ to be thousands of years old. It is called aamaleki and dhaatri in Sanskrit. Its botanical name is Emblica Officinalis. The amla tree is a medium (2) \_\_\_\_\_ tree with citrus fruits. It is found almost everywhere in India (3) \_\_\_\_\_ for some very high mountainous regions. It is found (4) \_\_\_\_\_ in Madhya Pradesh. The leaves are very small and have a close (5) \_\_\_\_\_ to those of Gulmohar. The amla tree has slender branches which grow upwards and surround the trees on all sides.

**SubQuestion No : 18**

**Q.18 Select the most appropriate option to fill in blank no. 3.**

- Ans  1. till  
 2. without  
 3. except  
 4. unless

Question ID : 26433072258

Status : Not Answered

Chosen Option : --

**Comprehension:**

In the following passage, some words have been deleted. Read the passage carefully and select the most appropriate option to fill in each blank.

Amla tree is (1) \_\_\_\_\_ to be thousands of years old. It is called aamaleki and dhaatri in Sanskrit. Its botanical name is Emblica Officinalis. The amla tree is a medium (2) \_\_\_\_\_ tree with citrus fruits. It is found almost everywhere in India (3) \_\_\_\_\_ for some very high mountainous regions. It is found (4) \_\_\_\_\_ in Madhya Pradesh. The leaves are very small and have a close (5) \_\_\_\_\_ to those of Gulmohar. The amla tree has slender branches which grow upwards and surround the trees on all sides.

**SubQuestion No : 19**

**Q.19 Select the most appropriate option to fill in blank no. 4.**

- Ans  1. abundantly  
 2. lavishly  
 3. profusely  
 4. wholly

Question ID : 26433072259

Status : Not Answered

Chosen Option : --

**Comprehension:**

In the following passage, some words have been deleted. Read the passage carefully and select the most appropriate option to fill in each blank.

Amla tree is (1) \_\_\_\_\_ to be thousands of years old. It is called aamaleki and dhaatri in Sanskrit. Its botanical name is Emblica Officinalis. The amla tree is a medium (2) \_\_\_\_\_ tree with citrus fruits. It is found almost everywhere in India (3) \_\_\_\_\_ for some very high mountainous regions. It is found (4) \_\_\_\_\_ in Madhya Pradesh. The leaves are very small and have a close (5) \_\_\_\_\_ to those of Gulmohar. The amla tree has slender branches which grow upwards and surround the trees on all sides.

**SubQuestion No : 20**

**Q.20** Select the most appropriate option to fill in blank no. 5.

- Ans  1. congruence  
 2. harmony  
 3. resemblance  
 4. coincidence

Question ID : 26433072260  
Status : Not Answered  
Chosen Option : --

## Section : Part-D-Hindi

**Q.1** 'किसी बात पर बार-बार जोर देना' वाक्यांश के लिए उचित शब्द क्या होगा?

- Ans  1. आग्रह  
 2. नाद  
 3. कलरव  
 4. मुनादी

Question ID : 26433065913  
Status : Answered  
Chosen Option : 1

**Q.2** 'जानने की इच्छा' वाक्यांश के लिए सार्थक शब्द है-

- Ans  1. जिज्ञासा  
 2. जानकारी  
 3. अज्ञ  
 4. जिजीविषा

Question ID : 26433065857  
Status : Answered  
Chosen Option : 1

**Q.3** 'वह पुरुष जिसकी पत्नी मर गई हो' इस वाक्यांश के लिए सार्थक शब्द है -

- Ans  1. साधक  
 2. सधवा  
 3. विधवा  
 4. विधुर

Question ID : 26433062334  
Status : Answered  
Chosen Option : 4

Q.4 "चोर को क्षमा दान कर दिया गया।"  
उपरोक्त वाक्य में क्रिया सम्बन्धी त्रुटि पहचानकर निम्नलिखित में से शुद्ध वाक्य का चयन कीजिए।

- Ans  1. चोर को क्षमा दान प्रदान किया गया।  
 2. चोर को क्षमा कर दिया गया।  
 3. चोर को क्षमा दान दे दिया गया।  
 4. चोर को क्षमा दान किया गया।

Question ID : 26433066975  
Status : Answered  
Chosen Option : 2

Q.5 'बाढ़ के कारण जान-माल की भारी \_\_\_\_\_ हो चुकी थी।'  
उपरोक्त वाक्य में रिक्त स्थान की पूर्ति उपयुक्त शब्द द्वारा कीजिए।

- Ans  1. तबाही  
 2. विनाशलीला  
 3. रंजिश  
 4. उगाही

Question ID : 26433069683  
Status : Answered  
Chosen Option : 1

Q.6 निम्न में से अशुद्ध शब्द की पहचान करें।

- Ans  1. उज्ज्वल  
 2. अनधिकार  
 3. अतिथि  
 4. कवयित्री

Question ID : 26433067106  
Status : Answered  
Chosen Option : 2

Q.7 नीचे दिए मुहावरे का सही अर्थ दिए गए विकल्पों में से चुनिए-  
लोहा मानना

- Ans  1. सच्चाई स्वीकार करना  
 2. गलती स्वीकार करना  
 3. वीरता स्वीकार करना  
 4. श्रेष्ठता स्वीकार करना

Question ID : 26433062312  
Status : Answered  
Chosen Option : 3



Q.8 निम्नलिखित में से सकर्मक क्रिया का उदाहरण नहीं है-

- Ans  1. बालक दौड़ता है।  
 2. सोहन साइकिल चलाता है।  
 3. मोहन दूध पीता है।  
 4. श्यामा ढोलक बजाती है।

Question ID : 26433085040  
Status : Answered  
Chosen Option : 1

Q.9 निम्न में से किस वाक्य में 'क्लेश' के सही पर्यायवाची शब्द का प्रयोग हुआ है?

- Ans  1. सुयश मूर्ख है।  
 2. उस बात का मुझे दुःख है।  
 3. अश्विन अधिक रुष्ट हो गया।  
 4. काव्या की खुशी का ठिकाना नहीं था।

Question ID : 26433067017  
Status : Not Answered  
Chosen Option : --

Q.10 विकल्पों में दिए गए शब्दों में से उचित शब्द चुनकर निम्न वाक्य पूर्ण करें।  
हमें \_\_\_\_\_ का निरादर नहीं करना चाहिए।

- Ans  1. अन्न  
 2. अन  
 3. अन्य  
 4. अन्

Question ID : 26433062911  
Status : Answered  
Chosen Option : 1

Q.11 निम्नलिखित वाक्य के किस खंड में त्रुटि है?  
मोहिनी का पती परदेश में है।

- Ans  1. परदेश  
 2. पती  
 3. का  
 4. मोहिनी

Question ID : 26433066761  
Status : Answered  
Chosen Option : 2

Q.12 निम्नलिखित में से किस वाक्य में दिए गए शब्द के सही विलोम शब्द का प्रयोग किया गया है?  
अंधकार

- Ans
- 1. कमरे में चाँदनी है।
  - 2. कमरे में धुआँ फैला है।
  - 3. कमरे में रसायन फैल रहा है।
  - 4. कमरे में प्रकाश फैला हुआ है।

Question ID : 26433066947  
Status : Answered  
Chosen Option : 4

Q.13 आज मैच देखकर आनंद आ गया।  
उपरोक्त वाक्य में रेखांकित शब्द के उचित पर्यायवाची शब्द का चयन कीजिए।

- Ans
- 1. सुधी
  - 2. मधवा
  - 3. प्रसन्नता
  - 4. रम्य

Question ID : 26433079722  
Status : Answered  
Chosen Option : 3

Q.14 निम्नलिखित विकल्पों में से 'आस्तीन का साँप' मुहावरे का अर्थ क्या है?

- Ans
- 1. प्रिय बनकर धोखा देने वाला
  - 2. विश्वासपात्र बनना
  - 3. सबका प्रिय बनकर रहने वाला
  - 4. दुष्टता करना

Question ID : 26433062548  
Status : Answered  
Chosen Option : 1

Q.15 घोड़ा जंगल की तरफ भागा।  
उपरोक्त वाक्य में 'की तरफ' के बदले कौन सा शब्द प्रयोग हो सकता है ?

- Ans
- 1. के निकट
  - 2. की ओर
  - 3. की ओर
  - 4. के सामने

Question ID : 26433062693  
Status : Answered  
Chosen Option : 2

**Comprehension:**

निम्नलिखित गद्यांश में कुछ शब्दों को हटा दिया गया है। दिए गए विकल्पों की सहायता से रिक्त स्थानों की पूर्ति कीजिए। प्रत्येक संख्या के लिए सबसे उपयुक्त विकल्प का चयन कीजिए।  
स्कूली सत्र और परीक्षा समाप्त होने के पश्चात लम्बी 1. \_\_\_\_\_ का आनंद कुछ और ही होता है। पढाई का बोझ सिर से 2. \_\_\_\_\_ जाता है। उस समय परीक्षा के 3. \_\_\_\_\_ की प्रतीक्षा होती है। छुट्टियों का समय हमारा 4. \_\_\_\_\_ होता है। हमारे लिए यह समय अतुल्य 5. \_\_\_\_\_ से कम नहीं होता है।

**SubQuestion No : 16**

Q.16 रिक्त स्थान 1 की पूर्ति के लिए सबसे उपयुक्त विकल्प का चयन कीजिए।

- Ans  1. बातों  
 2. रुचियों  
 3. छुट्टियों  
 4. कक्षाओं

Question ID : 264330111005

Status : Answered

Chosen Option : 3

**Comprehension:**

निम्नलिखित गद्यांश में कुछ शब्दों को हटा दिया गया है। दिए गए विकल्पों की सहायता से रिक्त स्थानों की पूर्ति कीजिए। प्रत्येक संख्या के लिए सबसे उपयुक्त विकल्प का चयन कीजिए।  
स्कूली सत्र और परीक्षा समाप्त होने के पश्चात लम्बी 1. \_\_\_\_\_ का आनंद कुछ और ही होता है। पढाई का बोझ सिर से 2. \_\_\_\_\_ जाता है। उस समय परीक्षा के 3. \_\_\_\_\_ की प्रतीक्षा होती है। छुट्टियों का समय हमारा 4. \_\_\_\_\_ होता है। हमारे लिए यह समय अतुल्य 5. \_\_\_\_\_ से कम नहीं होता है।

**SubQuestion No : 17**

Q.17 रिक्त स्थान 2 की पूर्ति के लिए सबसे उपयुक्त विकल्प का चयन कीजिए।

- Ans  1. मर  
 2. उतर  
 3. चढ़  
 4. बढ़

Question ID : 264330111006

Status : Answered

Chosen Option : 2

**Comprehension:**

निम्नलिखित गद्यांश में कुछ शब्दों को हटा दिया गया है। दिए गए विकल्पों की सहायता से रिक्त स्थानों की पूर्ति कीजिए। प्रत्येक संख्या के लिए सबसे उपयुक्त विकल्प का चयन कीजिए।  
स्कूली सत्र और परीक्षा समाप्त होने के पश्चात लम्बी 1. \_\_\_\_\_ का आनंद कुछ और ही होता है। पढाई का बोझ सिर से 2. \_\_\_\_\_ जाता है। उस समय परीक्षा के 3. \_\_\_\_\_ की प्रतीक्षा होती है। छुट्टियों का समय हमारा 4. \_\_\_\_\_ होता है। हमारे लिए यह समय अतुल्य 5. \_\_\_\_\_ से कम नहीं होता है।

**SubQuestion No : 18**

Q.18 रिक्त स्थान 3 की पूर्ति के लिए सबसे उपयुक्त विकल्प का चयन कीजिए।

- Ans  1. ध्यान  
 2. योजना  
 3. परिणाम  
 4. प्रमाण

Question ID : 264330111007

Status : Answered

Chosen Option : 3

**Comprehension:**

निम्नलिखित गद्यांश में कुछ शब्दों को हटा दिया गया है। दिए गए विकल्पों की सहायता से रिक्त स्थानों की पूर्ति कीजिए। प्रत्येक संख्या के लिए सबसे उपयुक्त विकल्प का चयन कीजिए।  
स्कूली सत्र और परीक्षा समाप्त होने के पश्चात लम्बी 1. \_\_\_\_\_ का आनंद कुछ और ही होता है। पढाई का बोझ सिर से 2. \_\_\_\_\_ जाता है। उस समय परीक्षा के 3. \_\_\_\_\_ की प्रतीक्षा होती है। छुट्टियों का समय हमारा 4. \_\_\_\_\_ होता है। हमारे लिए यह समय अतुल्य 5. \_\_\_\_\_ से कम नहीं होता है।

**SubQuestion No : 19**

Q.19 रिक्त स्थान 4 की पूर्ति के लिए सबसे उपयुक्त विकल्प का चयन कीजिए।

- Ans
- 1. व्यवसाय
  - 2. मिलाकर
  - 3. अपना
  - 4. कार्यक्रम

Question ID : 264330111008

Status : Answered

Chosen Option : 3

**Comprehension:**

निम्नलिखित गद्यांश में कुछ शब्दों को हटा दिया गया है। दिए गए विकल्पों की सहायता से रिक्त स्थानों की पूर्ति कीजिए। प्रत्येक संख्या के लिए सबसे उपयुक्त विकल्प का चयन कीजिए।  
स्कूली सत्र और परीक्षा समाप्त होने के पश्चात लम्बी 1. \_\_\_\_\_ का आनंद कुछ और ही होता है। पढाई का बोझ सिर से 2. \_\_\_\_\_ जाता है। उस समय परीक्षा के 3. \_\_\_\_\_ की प्रतीक्षा होती है। छुट्टियों का समय हमारा 4. \_\_\_\_\_ होता है। हमारे लिए यह समय अतुल्य 5. \_\_\_\_\_ से कम नहीं होता है।

**SubQuestion No : 20**

Q.20 रिक्त स्थान 5 की पूर्ति के लिए सबसे उपयुक्त विकल्प का चयन कीजिए।

- Ans
- 1. जीवन
  - 2. व्यतीत
  - 3. मित्रों
  - 4. संपत्ति

Question ID : 264330111009

Status : Answered

Chosen Option : 4

# Constable GD in CAPFs SSF Rifleman GD in Assam Rifles and Sepoy in NCB Examination 2022

Roll Number	KD Job Updates
Candidate Name	KD Job Updates
Venue Name	iON Digital Zone iDZ Vellore
Exam Date	30/01/2023
Exam Time	9:00 AM - 10:00 AM
Subject	Constable GD Examination 2022

## Section : Part-A-General Intelligence and Reasoning

Q.1 Select the correct mirror image of the given figure when the mirror is placed at MN as shown below.

U n t 5 7 L E

M ————— N

Ans

- 1. U n t 5 7 L E
- 2. n u t 5 7 L E
- 3. n u t 7 7 L E
- 4. n u t 5 7 L E

Question ID : 26433080802

Status : Answered

Chosen Option : 2

Q.2 In this question, three statements are given, followed by two conclusions numbered I and II. Assuming the statements to be true, even if they seem to be at variance with commonly known facts, decide which of the conclusions logically follows/follow from the statements.

Statements:

Some doctors are scholars.

All scholars are intelligent.

All intelligent are smart.

Conclusions:

I. Some doctors are smart.

II. All scholars are smart.

Ans

- 1. Neither conclusion I nor II follows.
- 2. Both conclusions I and II follow.
- 3. Only conclusion II follows.
- 4. Only conclusion I follows.

Question ID : 26433070391

Status : Answered

Chosen Option : 2

Q.3 In a certain code language, 'heaven plate' is coded as 'flower rage', 'curtain kingdom' is coded as 'computer blanket', 'kingdom plate' is coded as 'blanket rage', and 'heaven curtain' is coded as 'flower computer'. What is the code word for 'kingdom'?

- Ans
- 1. blanket
  - 2. rage
  - 3. flower
  - 4. plate

Question ID : 26433079366  
Status : Answered  
Chosen Option : 2

Q.4 In a certain code language, FUTURE is written as 'KWYWWG', and SHREWD is written as 'XJWGBF'. How will 'SAILOR' be written in the same code language?

- Ans
- 1. XCNMTT
  - 2. XCNNTT
  - 3. XCMMTT
  - 4. XCMNTT

Question ID : 26433067993  
Status : Answered  
Chosen Option : 1

Q.5 Select the number from among the given options that can replace the question mark (?) in the following series.

$$\frac{1}{205}, \frac{1}{164}, \frac{1}{123}, \frac{1}{82}, ?$$

- Ans
- 1.  $\frac{1}{19}$
  - 2.  $\frac{1}{22}$
  - 3.  $\frac{1}{41}$
  - 4.  $\frac{1}{36}$

Question ID : 26433074528  
Status : Answered  
Chosen Option : 2

**Q.6** Which two signs should be interchanged to make the below equation mathematically correct?

$$112 - 8 + 96 \div 16 \times 20 = 0$$

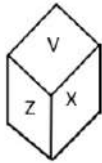
- Ans
- 1. + and  $\div$
  - 2. - and +
  - 3.  $\times$  and +
  - 4. - and  $\times$

Question ID : 264330117532

Status : Answered

Chosen Option : 2

**Q.7** Two different positions of the same dice are shown having alphabets U to Z. Find the alphabet on the face opposite the face showing 'U'.



- Ans
- 1. X
  - 2. Y
  - 3. V
  - 4. W

Question ID : 26433085525

Status : Answered

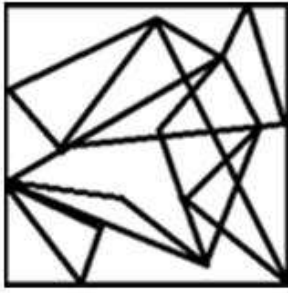
Chosen Option : 1

Q.8 Select the option figure in which the given figure is embedded (rotation is NOT allowed).

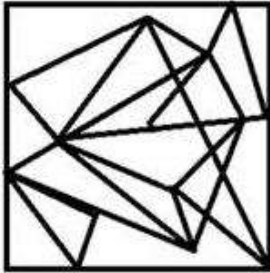


Ans

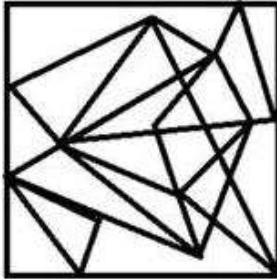
✗ 1.



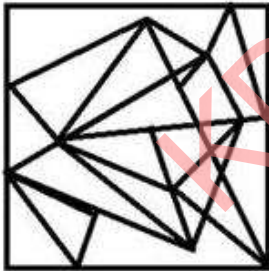
✗ 2.



✓ 3.



✗ 4.



Job Updates

Question ID : 26433069592

Status : Answered

Chosen Option : 3



Q.9 A,B,C,D,E and F are six friends sitting around a circular table, facing the centre of the table. B is the immediate neighbour of C and E. A is the immediate neighbour of F and D.F is sitting to the immediate left of C. Who is sitting between A and E?

- Ans
- 1. B
  - 2. F
  - 3. C
  - 4. D

Question ID : 26433091414  
Status : Answered  
Chosen Option : 2

Q.10 Select the set in which the numbers are related in the same way as are the numbers of the following set.

(NOTE : Operations should be performed on the whole numbers, without breaking down the numbers into its constituent digits. E.g. 13 – Operations on 13 such as adding /subtracting/multiplying etc. to 13 can be performed. Breaking down 13 into 1 and 3 and then performing mathematical operations on 1 and 3 is NOT allowed)  
(15, 16, 155)  
(12, 13, 125)

- Ans
- 1. (18, 12, 150)
  - 2. (13, 15, 150)
  - 3. (21, 15, 195)
  - 4. (9, 18, 145)

Question ID : 26433076485  
Status : Answered  
Chosen Option : 2

Q.11 Select the option that is related to the third word in the same way as the second word is related to the first word.)

(The words must be considered as meaningful English words and must not be related to each other based on the number of letters/number of consonants/vowels in the word)

Guilt : Innocence :: Jovial : ?

- Ans
- 1. Gloomy
  - 2. Lively
  - 3. Bright
  - 4. Jaunty

Question ID : 26433079482  
Status : Answered  
Chosen Option : 2

Q.12 Which of the following letter-clusters will replace the question mark (?) in the given series?

CXGZ, FUJW, IRMT, ?, OLSN

- Ans
- 1. LPOQ
  - 2. LOPQ
  - 3. MOPP
  - 4. LPPQ

Question ID : 26433076436  
Status : Answered  
Chosen Option : 2

Q.13 Which option represents the correct order of the given words as they would appear in the English dictionary?

- 1 double
- 2 doctor
- 3 domestic
- 4 domicile
- 5 document

Ans  1. 2,3,5,1,4

2. 2,5,3,4,1

3. 2,4,5,1,3

4. 2,5,4,1,3

Question ID : 26433069284

Status : Answered

Chosen Option : 2

KD Job Updates

Q.14 Which figure should replace the question mark (?) if the series were to be continued?

V	△	3	△	3	□	T	□	
	X		V		△		3	
T	□	3	□	T	X	V	X	T
						X	V	△
								?

Ans

✓ 1.

T		X
	□	
3	△	V

✗ 2.

T		X
	□	
3	V	△

✗ 3.

T		3
	X	
□	△	V

✗ 4.

△		□
	T	
V	X	3

Question ID : 26433076636  
 Status : Answered  
 Chosen Option : 4

Q.15 Nicole is Dion's sister. Vanessa is Dion's mother. Raj is Vanessa's father. Anjali is Raj's mother. Paul is Raj's father. How is Vanessa related to Nicole?

- Ans
- ✗ 1. Mother's mother
  - ✗ 2. Mother's sister
  - ✓ 3. Mother
  - ✗ 4. Sister

Question ID : 26433074597  
 Status : Answered  
 Chosen Option : 2

Q.16 Select the option that is related to the fifth letter-cluster in the same way as the second letter-cluster is related to the first letter-cluster and the fourth letter-cluster is related to the third letter-cluster.

HIGH: SGRJ :: MOVE: NMCJ :: BEAT: ?

- Ans
- 1. VHZV
  - 2. YVZG
  - 3. YCXV
  - 4. DWXU

Question ID : 26433057492  
Status : Answered  
Chosen Option : 2

Q.17 Six friends are sitting in a circle. All of them are facing the centre. Palak is an immediate neighbour of Kumud. Jhalak sits third to the left of Mehak. Rahat sits fourth to the right of Jhalak. Kumud sits second to the right of Chahak. Who sits third to the right of Rahat?

- Ans
- 1. Kumud
  - 2. Palak
  - 3. Mehak
  - 4. Chahak

Question ID : 26433069505  
Status : Answered  
Chosen Option : 2

Q.18 Which letter-cluster will replace the question mark (?) to complete the given series?  
MKLJ, NLMK, OMNL, ?, QOPN

- Ans
- 1. PNLM
  - 2. MNOP
  - 3. PNOM
  - 4. PONM

Question ID : 26433067711  
Status : Answered  
Chosen Option : 4

Q.19 Which two signs should be interchanged to make the below equation mathematically correct?

$$20 + 34 - 81 \times 9 \div 2 = 36$$

- Ans
- 1. ÷ and -
  - 2. + and -
  - 3. × and ÷
  - 4. + and ×

Question ID : 264330114196  
Status : Answered  
Chosen Option : 2

**Q.20** Which of the following numbers will replace the question mark (?) in the given series?  
3, 5, 9, ?, 33, 65

- Ans  1. 17  
 2. 22  
 3. 16  
 4. 19

Question ID : 26433070217  
Status : Answered  
Chosen Option : 3

Section : Part-B-General Knowledge and General awareness

**Q.1** In which of the following locations can you build large dams to generate hydel power?

- Ans  1. Hilly terrains  
 2. Desert areas  
 3. Plains  
 4. Oceans

Question ID : 26433091474  
Status : Answered  
Chosen Option : 4

**Q.2** Who is the new Secretary of The Indian Council of Agricultural Research (ICAR) effective from 1st August 2022?

- Ans  1. Amitabh Kant  
 2. Himanshu Pathak  
 3. Sanjay Agarwal  
 4. Trilochan Mohapatra

Question ID : 264330115022  
Status : Answered  
Chosen Option : 4

**Q.3** Mitochondria have \_\_\_\_\_ membrane coverings.

- Ans  1. 2  
 2. 4  
 3. 5  
 4. 3

Question ID : 264330115208  
Status : Answered  
Chosen Option : 2

Q.4 Which of the following martial dances is related to Uttarakhand?

- Ans
- 1. Thang-taa
  - 2. Kalari Paattu
  - 3. Gatka
  - 4. Choliya

Question ID : 26433071663  
Status : Answered  
Chosen Option : 2

Q.5 \_\_\_\_\_ is used to control the demand and supply of money.

- Ans
- 1. Credit control
  - 2. Debit control
  - 3. Equity control
  - 4. Share control

Question ID : 264330115319  
Status : Answered  
Chosen Option : 2

Q.6 Who among the following became the 49th Chief Justice of India in August 2022?

- Ans
- 1. Fali Sam Nariman
  - 2. Gopal Subramaniam
  - 3. Mukul Rohatgi
  - 4. Uday Umesh Lalit

Question ID : 264330114915  
Status : Answered  
Chosen Option : 2

Q.7 In which layer of the earth do natural earthquakes occur?

- Ans
- 1. Lithosphere
  - 2. Inner Core
  - 3. Mesosphere
  - 4. Asthenosphere

Question ID : 264330116002  
Status : Answered  
Chosen Option : 2

Q.8 The proportion of India's GDP contributed by the \_\_\_\_\_ sector increased in the period from 11.8 per cent in 1950-51 to 24.6 per cent in 1990-91.

- Ans
- 1. industrial
  - 2. defence
  - 3. services
  - 4. agricultural

Question ID : 264330116124  
Status : Answered  
Chosen Option : 4

**Q.9 Which Article of the Indian Constitution talks about the duties and powers of the Comptroller and Auditor General of India?**

- Ans
- 1. Article 160
  - 2. Article 148
  - 3. Article 149
  - 4. Article 165

Question ID : 26433090674  
Status : Answered  
Chosen Option : 3

**Q.10 \_\_\_\_\_ is the chairperson of National Institution for Transforming India (NITI) Aayog, as on November 2022.**

- Ans
- 1. Mr. Arvind Kejriwal
  - 2. Mr. Amit Shah
  - 3. Mr. Narendra Modi
  - 4. Mr. Nitin Gadkari

Question ID : 264330115381  
Status : Answered  
Chosen Option : 3

**Q.11 \_\_\_\_\_ (ODOP) aims to reap the benefit of scale in terms of procurement of inputs, availing common services and marketing of products.**

- Ans
- 1. One District One Product
  - 2. One District One Purpose
  - 3. One Difference One Product
  - 4. One District One Person

Question ID : 264330116171  
Status : Answered  
Chosen Option : 1

**Q.12 In how many phases was the last Census of 2011 conducted in India?**

- Ans
- 1. 1
  - 2. 3
  - 3. 4
  - 4. 2

Question ID : 264330116034  
Status : Answered  
Chosen Option : 2

**Q.13 The Brabourne Cricket Stadium is located in which of the following state of India?**

- Ans  1. Maharashtra  
 2. Kerala  
 3. Bihar  
 4. Madhya Pradesh

Question ID : 264330116253  
Status : Answered  
Chosen Option : 4

**Q.14 To develop scientific temper and humanism is a:**

- Ans  1. constitutional remedy  
 2. Fundamental Right  
 3. Fundamental Duty  
 4. Directive principles of state policy

Question ID : 26433080978  
Status : Answered  
Chosen Option : 2

**Q.15 When did Ashoka, the Mauryan ruler, die?**

- Ans  1. 245 BC  
 2. 232 BC  
 3. 249 BC  
 4. 258 BC

Question ID : 264330115453  
Status : Answered  
Chosen Option : 3

**Q.16 The couple who won Padma Bhushan in 2009 for Bharatanatyam is \_\_\_\_\_.**

- Ans  1. Mahaboob Subhani and Kaleeshabi Mahboob  
 2. K.V. Sampath Kumar and Vidushi K.S. Jayalakshmi  
 3. Vannadiil Pudiyaiveetil Dhananjayan and Shanta Dhananjayan  
 4. Krishna Ella and Suchitra Ella

Question ID : 264330115825  
Status : Answered  
Chosen Option : 2



**Q.17** Jeev Milkha Singh's became the first player from India to join the European Tour in 1998. He won:  
(i) four European Tour Titles  
(ii) four Japan Golf Tour titles  
(iii) six Asian Tour tiles

- Ans**
- 1. Only (i)
  - 2. Only (iii)
  - 3. Only (ii)
  - 4. (i), (ii) and (iii)

Question ID : 26433089923  
Status : Answered  
Chosen Option : 2

**Q.18** Which industry do cotton, jute, silk, woollen textiles, sugar and edible oil, etc. belong to ?

- Ans**
- 1. agro based industry
  - 2. heavy industry
  - 3. joint sector industry
  - 4. mineral based industry

Question ID : 264330115566  
Status : Answered  
Chosen Option : 2

**Q.19** In \_\_\_\_\_, the East India Company acquired a charter from the ruler of England, Queen Elizabeth I, granting it the sole right to trade with the East.

- Ans**
- 1. 1624
  - 2. 1600
  - 3. 1610
  - 4. 1615

Question ID : 264330115700  
Status : Answered  
Chosen Option : 2

**Q.20** The harvest festival 'Nabanna' is celebrated in \_\_\_\_\_ .

- Ans**
- 1. West Bengal
  - 2. Jharkhand
  - 3. Haryana
  - 4. Chhattisgarh

Question ID : 264330106204  
Status : Answered  
Chosen Option : 2

**Q.1** Two successive discounts of 50 percent and 40 percent are equivalent to a single discount of \_\_\_\_\_.

- Ans**
- 1. 90 percent
  - 2. 45 percent
  - 3. 70 percent
  - 4. 80 percent

Question ID : 264330116740  
Status : Answered  
Chosen Option : 2

**Q.2** A car travels  $\frac{1}{3}$  of the distance on a straight road at a speed of 10 km/h, the next  $\frac{1}{3}$  at a speed of 20 km/h and the last  $\frac{1}{3}$  at a speed of 60 km/h. Find the average speed of the car.

- Ans**
- 1. 18 km/h
  - 2. 12 km/h
  - 3. 15 km/h
  - 4. 10 km/h

Question ID : 26433076044  
Status : Answered  
Chosen Option : 2

**Q.3** Given that 15% of X's income = 20% of Y's income = 30% of Z's income. The sum of their incomes is ₹9,000. If Y spends ₹2,200 from his income, then Y's saving is:

- Ans**
- 1. ₹500
  - 2. ₹200
  - 3. ₹800
  - 4. ₹600

Question ID : 26433080010  
Status : Answered  
Chosen Option : 2

**Q.4** Find the HCF of 2800 and 756.

- Ans**
- 1. 56
  - 2. 42
  - 3. 14
  - 4. 28

Question ID : 264330116632  
Status : Answered  
Chosen Option : 2

**Q.5** A heap of sand is in the shape of a right circular cone. It has a slant height of 10 feet and a base diameter of 16 feet. Find the volume of sand making up the heap. Take  $\pi = 3.14$ .

- Ans**
- 1. 301.96 ft<sup>3</sup>
  - 2. 441.72 ft<sup>3</sup>
  - 3. 423.89 ft<sup>3</sup>
  - 4. 401.92 ft<sup>3</sup>

Question ID : 26433075255  
Status : Answered  
Chosen Option : 2

**Q.6** A and B can complete a piece of work in 8 days and 16 days respectively. If A and B work on alternate days, starting with B, in how many days the work will be completed?

- Ans**
- 1. 6
  - 2. 11
  - 3. 8
  - 4. 12

Question ID : 26433076280  
Status : Answered  
Chosen Option : 2

**Q.7** P and Q together can do a job in 15 days. P is thrice as efficient as Q. In how many days can P alone do the job?

- Ans**
- 1. 24 days
  - 2. 20 days
  - 3. 30 days
  - 4. 15 days

Question ID : 264330116855  
Status : Answered  
Chosen Option : 2

**Q.8** The monthly income of a person was ₹15,400 and his monthly expenditure was ₹7,200. His income increased by 20% and his expenditure increased by 5%. Find the percentage increase in his savings.

- Ans**
- 1. 60.31%
  - 2. 65.24%
  - 3. 33.17%
  - 4. 35.12%

Question ID : 26433080011  
Status : Answered  
Chosen Option : 2

Q.9

Find the volume of a hemisphere of diameter 12 cm (Use  $\pi = \frac{22}{7}$ ).

Ans

✓ 1.  $\frac{3168}{7} \text{ cm}^3$

✗ 2.  $\frac{528}{7} \text{ cm}^3$

✗ 3.  $\frac{1584}{7} \text{ cm}^3$

✗ 4.  $\frac{9703}{7} \text{ cm}^3$

Question ID : 26433075746

Status : Answered

Chosen Option : 2

Q.10 A dishonest retailer sells his goods at a profit of 18% by weighing 800 g instead of 1 kg. Find his actual gain percentage.

Ans

✗ 1. 46.5%

✓ 2. 47.5%

✗ 3. 45.5%

✗ 4. 44.5%

Question ID : 26433075115

Status : Answered

Chosen Option : 2

Q.11 A certain number is subtracted from each of the numbers 20, 24 and 29. After subtraction, those numbers are in proportional. What is the number subtracted?

Ans

✗ 1. 6

✓ 2. 4

✗ 3. 5

✗ 4. 3

Question ID : 26433075669

Status : Answered

Chosen Option : 4

Q.12 Simplify the following expression.

$[7 \div 2 \times (8.35 + 1.3 + 2.42)]$

Ans

✗ 1. 60.324

✗ 2. 53.462

✓ 3. 42.245

✗ 4. 51.352

Question ID : 26433074947

Status : Answered

Chosen Option : 4

Q.13 There are 75 boys and 45 girls in a class. If the average weight of boys is 60 kg and the average weight of girls is 40 kg, then find the average weight of the whole class.

- Ans
- 1. 50 kg
  - 2. 52.5 kg
  - 3. 60.5 kg
  - 4. 50.5 kg

Question ID : 26433083029  
Status : Answered  
Chosen Option : 1

Q.14 A man wants to purchase a car and for that, he checks the rating of the car on internet. He finds the ratings of  $\frac{9}{10}$  for comfort and  $\frac{8}{10}$  for resale value. Based on his requirements, he gives a weightage of 55% to comfort and 45% to resale value. Calculate the final rating of the car.

- Ans
- 1.  $\frac{9.5}{10}$
  - 2.  $\frac{8.55}{10}$
  - 3.  $\frac{7.55}{10}$
  - 4.  $\frac{7.5}{10}$

Question ID : 26433075966  
Status : Answered  
Chosen Option : 2

Q.15 What is the fourth proportional to 0.12, 0.16 and 0.21?

- Ans
- 1. 0.28
  - 2. 0.18
  - 3. 0.25
  - 4. 0.26

Question ID : 26433079868  
Status : Answered  
Chosen Option : 3

Q.16 The speed of a swimmer in downstream is 23km/h. If the speed of the swimmer in upstream is 14 km/h, then what is the speed of the stream?

- Ans
- 1. 4.5 km/h
  - 2. 5.5 km/h
  - 3. 4.0 km/h
  - 4. 5.0 km/h

Question ID : 26433075695  
Status : Answered  
Chosen Option : 2

Q.17 The population of a village increases by 0.2% in the first year, it increases by 0.4% in the second year, and due to some disease, it decreases by 0.4% in the third year. What will be its population after 3 years, if in the beginning of the first year it was 2000 (rounded off to two decimal places)?

- Ans
- 1. 2005.45
  - 2. 2009.84
  - 3. 2010.12
  - 4. 2003.97

Question ID : 26433075391  
Status : Answered  
Chosen Option : 2

Q.18 A sum of Rs.2,100 is invested for 1 year at 20% per annum, interest compounded half-yearly. Find the compound interest.

- Ans
- 1. Rs.441
  - 2. Rs.421
  - 3. Rs.431
  - 4. Rs.451

Question ID : 26433075735  
Status : Answered  
Chosen Option : 2

Q.19 On a tool whose marked price is Rs.280, a discount of 15% is offered. Due to a calculation mistake, the shopkeeper gives the customer Rs.20 extra. What is the effective discount percentage on the tool for the customer?

- Ans
- 1. 28.1%
  - 2. 22.1%
  - 3. 35%
  - 4. 31.1%

Question ID : 26433071364  
Status : Answered  
Chosen Option : 2

Q.20 If the selling price of an article is  $\frac{11}{5}$  times of the cost price, then the gain percentage is:

- Ans
- 1. 150%
  - 2. 110%
  - 3. 100%
  - 4. 120%

Question ID : 26433075385  
Status : Answered  
Chosen Option : 2

Q.1 Select the correct word for the blanks in the given sentence.

He has a \_\_\_\_\_ nature and the rainforest is a \_\_\_\_\_ of forest found on earth.

- Ans
- 1. type
  - 2. caring
  - 3. kind
  - 4. rude

Question ID : 26433060537  
Status : Answered  
Chosen Option : 2

Q.2 Substitute the underlined words with the option that is closest in meaning to it.

Do not pay attention to his words.

- Ans
- 1. Negate
  - 2. Accept
  - 3. Ignore
  - 4. Fight

Question ID : 26433088951  
Status : Answered  
Chosen Option : 1

Q.3 Select the most appropriate meaning of the given idiom.

A man of means

- Ans
- 1. A well-mannered man with noble behaviour
  - 2. A wealthy man with lots of money and assets
  - 3. Someone who is an iconic personality for youngsters
  - 4. Someone who has earned a lot of fame

Question ID : 26433073210  
Status : Answered  
Chosen Option : 2

Q.4 Select the most appropriate spelling that can correctly substitute the misspelt underlined segment in the given sentence.

His part in the affair was quite open and abboard.

- Ans
- 1. aboard
  - 2. board
  - 3. aboveboard
  - 4. broad

Question ID : 26433071935  
Status : Answered  
Chosen Option : 1

Q.5 Select the most appropriate synonym of the underlined word.

The children sat by the hearth to keep away the cold.

- Ans
- 1. tandoor
  - 2. fireside
  - 3. oven
  - 4. convent

Question ID : 26433084598  
Status : Answered  
Chosen Option : 2

Q.6 Select the most appropriate ANTONYM of the given word.  
Local

- Ans
- 1. Familiar
  - 2. Foreign
  - 3. Frozen
  - 4. Torrid

Question ID : 26433066092  
Status : Answered  
Chosen Option : 2

Q.7 Select the most appropriate option to substitute the underlined segment in the given sentence to make it a meaningful sentence. If no substitution is required, select 'No substitution'.

The patients are shifted to another hospital that same evening as this hospital caught fire.

- Ans
- 1. were shifted at others hospital that same evening as this hospital caught fire.
  - 2. were shifted to another hospital that same evening as this hospital caught fire.
  - 3. were shifted to another hospital that same evening as this hospital catch fire.
  - 4. No substitution

Question ID : 26433092896  
Status : Answered  
Chosen Option : 2

Q.8 Select the most appropriate option to fill in the blank.

Those songs were a great relief for Mohan during his long and \_\_\_\_\_ bus journey.

- Ans
- 1. tolerable
  - 2. plausible
  - 3. tiring
  - 4. reprimanding

Question ID : 26433074365  
Status : Answered  
Chosen Option : 1



**Q.9** Select the most appropriate **ANTONYM** of the word given in the bracket to fill in the blank.

Do any of you \_\_\_\_\_ (object to) the decision?

- Ans  1. approve of  
 2. repine to  
 3. demonstrate  
 4. withstand to

Question ID : 26433092867  
Status : Answered  
Chosen Option : 4

**Q.10** The following sentence has been split into three segments. Identify the segment that contains a grammatical error. If you don't find any error, mark 'No error' as your answer.

Don't panic! / We won't leave you alone in trouble / when you travelling with us.

- Ans  1. when you travelling with us.  
 2. Don't panic!  
 3. No error  
 4. We won't leave you alone in trouble

Question ID : 26433086382  
Status : Answered  
Chosen Option : 2

**Q.11** Select the most appropriate synonym of the given word.

Entrap

- Ans  1. Implicate  
 2. Trim  
 3. Regulate  
 4. Glorify

Question ID : 26433073466  
Status : Answered  
Chosen Option : 4

**Q.12** Select the **INCORRECTLY** spelt word.

- Ans  1. Refridgeration  
 2. Telepathy  
 3. Strangulate  
 4. Bewilderment

Question ID : 26433073511  
Status : Answered  
Chosen Option : 4

Q.13 Select the most appropriate meaning of the given idiom.

Grease someone's palm

- Ans
- 1. To give a loan to someone
  - 2. To borrow money from an official
  - 3. To bribe one discreetly
  - 4. To lend money to an official

Question ID : 26433072673  
Status : Answered  
Chosen Option : 2

Q.14 Select the most appropriate homonym to fill in the blank.  
"Where is my \_\_\_\_\_ ?" cried the boatman.

- Ans
- 1. or
  - 2. o'er
  - 3. oat
  - 4. oar

Question ID : 26433084718  
Status : Answered  
Chosen Option : 3

Q.15 Select the most appropriate ANTONYM of the given word.

Lovely

- Ans
- 1. Pretty
  - 2. Attractive
  - 3. Hunky
  - 4. Lousy

Question ID : 26433072268  
Status : Answered  
Chosen Option : 3

**Comprehension:**

In the following passage, some words have been deleted. Read the passage carefully and select the most appropriate option to fill in each blank.

Dandelion is a widely distributed weed of the daisy family, (1) \_\_\_\_\_ a rosette of leaves and large bright yellow flowers followed (2) \_\_\_\_\_ globular heads of seeds with downy tufts. I also reminded them that April is designated as the Month of (3) \_\_\_\_\_ Military Child. Not many would know that 15 April is the day when we wear purple, or so to say, we 'purple (4) \_\_\_\_\_' to express our solidarity and support (5) \_\_\_\_\_ the strength and sacrifices of our children, while their fathers are deployed at Siachen Glacier, deserts and on our borders.

**SubQuestion No : 16**

**Q.16 Select the most appropriate option to fill in blank number 1.**

Ans  1. with

2. on

3. of

4. within

Question ID : 26433072103

Status : Answered

Chosen Option : 1

**Comprehension:**

In the following passage, some words have been deleted. Read the passage carefully and select the most appropriate option to fill in each blank.

Dandelion is a widely distributed weed of the daisy family, (1) \_\_\_\_\_ a rosette of leaves and large bright yellow flowers followed (2) \_\_\_\_\_ globular heads of seeds with downy tufts. I also reminded them that April is designated as the Month of (3) \_\_\_\_\_ Military Child. Not many would know that 15 April is the day when we wear purple, or so to say, we 'purple (4) \_\_\_\_\_' to express our solidarity and support (5) \_\_\_\_\_ the strength and sacrifices of our children, while their fathers are deployed at Siachen Glacier, deserts and on our borders.

**SubQuestion No : 17**

**Q.17 Select the most appropriate option to fill in blank number 2.**

Ans  1. by

2. with

3. along

4. since

Question ID : 26433072104

Status : Answered

Chosen Option : 3

**Comprehension:**

In the following passage, some words have been deleted. Read the passage carefully and select the most appropriate option to fill in each blank.

Dandelion is a widely distributed weed of the daisy family, (1) \_\_\_\_\_ a rosette of leaves and large bright yellow flowers followed (2) \_\_\_\_\_ globular heads of seeds with downy tufts. I also reminded them that April is designated as the Month of (3) \_\_\_\_\_ Military Child. Not many would know that 15 April is the day when we wear purple, or so to say, we 'purple (4) \_\_\_\_\_' to express our solidarity and support (5) \_\_\_\_\_ the strength and sacrifices of our children, while their fathers are deployed at Siachen Glacier, deserts and on our borders.

**SubQuestion No : 18**

**Q.18 Select the most appropriate option to fill in blank number 3.**

- Ans
- 1. a
  - 2. Zero article
  - 3. the
  - 4. an

Question ID : 26433072105

Status : Answered

Chosen Option : 2

**Comprehension:**

In the following passage, some words have been deleted. Read the passage carefully and select the most appropriate option to fill in each blank.

Dandelion is a widely distributed weed of the daisy family, (1) \_\_\_\_\_ a rosette of leaves and large bright yellow flowers followed (2) \_\_\_\_\_ globular heads of seeds with downy tufts. I also reminded them that April is designated as the Month of (3) \_\_\_\_\_ Military Child. Not many would know that 15 April is the day when we wear purple, or so to say, we 'purple (4) \_\_\_\_\_' to express our solidarity and support (5) \_\_\_\_\_ the strength and sacrifices of our children, while their fathers are deployed at Siachen Glacier, deserts and on our borders.

**SubQuestion No : 19**

**Q.19 Select the most appropriate option to fill in blank number 4.**

- Ans
- 1. up
  - 2. by
  - 3. for
  - 4. onto

Question ID : 26433072106

Status : Answered

Chosen Option : 2

**Comprehension:**

In the following passage, some words have been deleted. Read the passage carefully and select the most appropriate option to fill in each blank.

Dandelion is a widely distributed weed of the daisy family, (1) \_\_\_\_\_ a rosette of leaves and large bright yellow flowers followed (2) \_\_\_\_\_ globular heads of seeds with downy tufts. I also reminded them that April is designated as the Month of (3) \_\_\_\_\_ Military Child. Not many would know that 15 April is the day when we wear purple, or so to say, we 'purple (4) \_\_\_\_\_' to express our solidarity and support (5) \_\_\_\_\_ the strength and sacrifices of our children, while their fathers are deployed at Siachen Glacier, deserts and on our borders.

**SubQuestion No : 20**

**Q.20** Select the most appropriate option to fill in blank number 5.

- Ans  1. from  
 2. through  
 3. in  
 4. for

Question ID : 26433072107

Status : Answered

Chosen Option : 3

**Section : Part-D-Hindi**

**Q.1** जल की अथाह राशि को \_\_\_\_\_ कहते हैं।  
'समुद्र' के पर्याय से उपरोक्त वाक्य पूर्ण करें।

- Ans  1. पयोधर  
 2. सरिता  
 3. जलधि  
 4. कालिंदी

Question ID : 26433084989

Status : Not Answered

Chosen Option : --

**Q.2** निम्नलिखित वाक्यांश के लिए उपयुक्त सार्थक शब्द क्या होगा?  
जिसमें धैर्य की कमी हो

- Ans  1. अधीर  
 2. अविश्वास  
 3. अधिक  
 4. धीर

Question ID : 26433065754

Status : Not Answered

Chosen Option : --

Q.3 'गेरु' एक संज्ञा शब्द है।  
इसके बदले कौन – सा प्रत्यय युक्त शब्द उपयुक्त होगा?

- Ans  1. गेरुआ  
 2. ममेरा  
 3. गरज  
 4. गजल

Question ID : 26433062690  
Status : Not Answered  
Chosen Option : --

Q.4 निम्नलिखित विकल्पों में से किस एक वाक्य में विशेषण का उचित प्रयोग किया गया है?

- Ans  1. वह मीठा फल है।  
 2. वह खाता है।  
 3. वह पढ़ता है।  
 4. वह जाता है।

Question ID : 26433062960  
Status : Not Answered  
Chosen Option : --

Q.5 निम्नलिखित वाक्य में रेखांकित खंड के स्थान पर प्रयुक्त होने वाले सबसे उपयुक्त विकल्प का चयन कीजिए।  
उसने अपने दोस्त को जन्मदिन पर श्रद्धांजलि दी।

- Ans  1. तरक्की  
 2. आयु  
 3. बधाई  
 4. धमकी

Question ID : 26433079570  
Status : Not Answered  
Chosen Option : --

Q.6 'पारदर्शक' शब्द के लिए उचित वाक्यांश है-

- Ans  1. जिसे देखा जा सके  
 2. जिसके पार देखा जा सके  
 3. जिसके पार देखा न जा सके  
 4. जो कोई नाटक देखे

Question ID : 26433065874  
Status : Not Answered  
Chosen Option : --

Q.7 निम्नलिखित विकल्पों में से 'जो सर्व साधारण के सामने न रखा गया हो' वाक्यांश के लिए एक सार्थक शब्द क्या होगा ?

- Ans
- 1. अल्पज्ञ
  - 2. सर्वव्यापी
  - 3. अप्रकाशित
  - 4. अवध्य

Question ID : 26433062474  
Status : Not Answered  
Chosen Option : --

Q.8 निम्न वाक्य के रिक्त स्थान पर रेखांकित शब्द का उपयुक्त विलोम शब्द क्या होगा?  
सक्रिय व्यक्ति जीवन में नाम कमाता है, लेकिन \_\_\_\_\_ असफल हो जाता है।

- Ans
- 1. कर्मठ
  - 2. निष्क्रिय
  - 3. तंदरुस्त
  - 4. जागरूक

Question ID : 26433066907  
Status : Not Answered  
Chosen Option : --

Q.9 वाक्य में रेखांकित अंश के लिए उचित मुहावरा दिए गए विकल्पों में से चुनिए-  
उसे कोई क्या समझाए, वह तो महामूर्ख है।

- Ans
- 1. काठ का उल्लू
  - 2. काला नाग
  - 3. काजल की कोठरी
  - 4. काठ मार जाना

Question ID : 26433062303  
Status : Not Answered  
Chosen Option : --

Q.10 निम्नलिखित वाक्य में रेखांकित एकार्थी शब्दों का सही अर्थ-युग्म क्या होगा?  
द्यूत प्रथा का दुष्परिणाम पांडवों के साथ उनकी माता पृथा को भी भुगतना पड़ा।

- Ans
- 1. परंपरा-अलग
  - 2. परंपरा-कुंती
  - 3. सहानुभूति-विश्वास
  - 4. धारणा-परंपरा

Question ID : 26433091332  
Status : Not Answered  
Chosen Option : --

Q.11 निम्न विकल्पों में से ऐसा वाक्य चुनिए जिसमें अशुद्ध वर्तनी वाला पद न हो।

- Ans  1. यह कथा अवर्णनिय है।  
 2. दक्षिण के लोग कॉफी अधिक पीते हैं।  
 3. माली ने लकड़ि और घाश काट ली।  
 4. वह स्टेसन पर पहुँच गया।

Question ID : 26433063069  
Status : Not Answered  
Chosen Option : --

Q.12 वर्तनी की दृष्टि से अशुद्ध वाक्य का चयन कीजिए-

- Ans  1. जहाँ जाओगे भाग्य तुम्हारा साथ देगा।  
 2. जो कुछ याद था वह भी भूल गया।  
 3. उसकी असावधानी के कारण हम हार गए।  
 4. जब सब नश्ट हो गया, तब सारी चिंता दूर हुई।

Question ID : 26433062891  
Status : Not Answered  
Chosen Option : --

Q.13 विकल्पों में दिए गए शब्दों में से उचित शब्द से निम्न वाक्य पूर्ण करें।  
हमें अपने \_\_\_\_\_ की स्वयं देखभाल करनी चाहिए।

- Ans  1. सामान  
 2. सारांश  
 3. समान  
 4. सामान्य

Question ID : 26433062908  
Status : Not Answered  
Chosen Option : --

Q.14 निम्नलिखित विकल्पों में क्रिया के प्रेरणार्थक रूप का गलत प्रयोग किसमें हुआ है?

- Ans  1. टकारना - टकारवाना  
 2. बिठाना - बिठवाना  
 3. खिलाना - खिलवाना  
 4. दिलाना - दिलवाना

Question ID : 26433063047  
Status : Not Answered  
Chosen Option : --



Q.15 निम्नलिखित में से किस मुहावरे का अर्थ है 'अपमान सहन करना'?

- Ans  1. जहर का घूंट पीना  
 2. छाती पर सांप लोटना  
 3. दिल भर आना  
 4. छाती पर मूंग दलना

Question ID : 26433066809

Status : Not Answered

Chosen Option : --

**Comprehension:**

निम्नलिखित गद्यांश में कुछ शब्दों को हटा दिया गया है। दिए गए विकल्पों की सहायता से रिक्त स्थानों की पूर्ति कीजिए। प्रत्येक संख्या के लिए सबसे उपयुक्त विकल्प का चयन कीजिए।  
भारतवर्ष के उत्तर में 1. \_\_\_\_\_ तथा शेष तीनों 2. \_\_\_\_\_ में समुद्र है। बीच में जंगल, मरुस्थल, छोटे-बड़े राज्य, लहलहाते खेत और सुंदर नगर हैं। इन सब की सुरक्षा का भार 3. \_\_\_\_\_ पर है। पुलिस विभिन्न राज्यों में तथा सेना बाहरी क्षेत्र में अपने 4. \_\_\_\_\_ को निभाते हुए देश की रक्षा करती है। पूरे विश्व में भारतीय सेना को 5. \_\_\_\_\_ माना जाता है।

**SubQuestion No : 16**

Q.16 रिक्त स्थान 1 की पूर्ति के लिए सबसे उपयुक्त विकल्प का चयन कीजिए।

- Ans  1. सैनिक  
 2. राज्य  
 3. हिमालय  
 4. समुद्र

Question ID : 264330110987

Status : Not Answered

Chosen Option : --

**Comprehension:**

निम्नलिखित गद्यांश में कुछ शब्दों को हटा दिया गया है। दिए गए विकल्पों की सहायता से रिक्त स्थानों की पूर्ति कीजिए। प्रत्येक संख्या के लिए सबसे उपयुक्त विकल्प का चयन कीजिए।  
भारतवर्ष के उत्तर में 1. \_\_\_\_\_ तथा शेष तीनों 2. \_\_\_\_\_ में समुद्र है। बीच में जंगल, मरुस्थल, छोटे-बड़े राज्य, लहलहाते खेत और सुंदर नगर हैं। इन सब की सुरक्षा का भार 3. \_\_\_\_\_ पर है। पुलिस विभिन्न राज्यों में तथा सेना बाहरी क्षेत्र में अपने 4. \_\_\_\_\_ को निभाते हुए देश की रक्षा करती है। पूरे विश्व में भारतीय सेना को 5. \_\_\_\_\_ माना जाता है।

**SubQuestion No : 17**

Q.17 रिक्त स्थान 2 की पूर्ति के लिए सबसे उपयुक्त विकल्प का चयन कीजिए।

- Ans  1. समुद्रों  
 2. दिशाओं  
 3. देशों  
 4. अर्थों

Question ID : 264330110988

Status : Not Answered

Chosen Option : --

**Comprehension:**

निम्नलिखित गद्यांश में कुछ शब्दों को हटा दिया गया है। दिए गए विकल्पों की सहायता से रिक्त स्थानों की पूर्ति कीजिए। प्रत्येक संख्या के लिए सबसे उपयुक्त विकल्प का चयन कीजिए।  
भारतवर्ष के उत्तर में 1. \_\_\_\_\_ तथा शेष तीनों 2. \_\_\_\_\_ में समुद्र है। बीच में जंगल, मरुस्थल, छोटे-बड़े राज्य, लहलहाते खेत और सुंदर नगर हैं। इन सब की सुरक्षा का भार 3. \_\_\_\_\_ पर है। पुलिस विभिन्न राज्यों में तथा सेना बाहरी क्षेत्र में अपने 4. \_\_\_\_\_ को निभाते हुए देश की रक्षा करती है। पूरे विश्व में भारतीय सेना को 5. \_\_\_\_\_ माना जाता है।

**SubQuestion No : 18**

Q.18 रिक्त स्थान 3 की पूर्ति के लिए सबसे उपयुक्त विकल्प का चयन कीजिए।

- Ans  1. भारतीय  
 2. सेना  
 3. जनता  
 4. युवाओं

Question ID : 264330110989

Status : Not Answered

Chosen Option : --

**Comprehension:**

निम्नलिखित गद्यांश में कुछ शब्दों को हटा दिया गया है। दिए गए विकल्पों की सहायता से रिक्त स्थानों की पूर्ति कीजिए। प्रत्येक संख्या के लिए सबसे उपयुक्त विकल्प का चयन कीजिए।  
भारतवर्ष के उत्तर में 1. \_\_\_\_\_ तथा शेष तीनों 2. \_\_\_\_\_ में समुद्र है। बीच में जंगल, मरुस्थल, छोटे-बड़े राज्य, लहलहाते खेत और सुंदर नगर हैं। इन सब की सुरक्षा का भार 3. \_\_\_\_\_ पर है। पुलिस विभिन्न राज्यों में तथा सेना बाहरी क्षेत्र में अपने 4. \_\_\_\_\_ को निभाते हुए देश की रक्षा करती है। पूरे विश्व में भारतीय सेना को 5. \_\_\_\_\_ माना जाता है।

**SubQuestion No : 19**

Q.19 रिक्त स्थान 4 की पूर्ति के लिए सबसे उपयुक्त विकल्प का चयन कीजिए।

- Ans  1. कर्तव्य  
 2. प्रेरणा  
 3. स्वार्थ  
 4. युद्ध

Question ID : 264330110990

Status : Not Answered

Chosen Option : --

**Comprehension:**

निम्नलिखित गद्यांश में कुछ शब्दों को हटा दिया गया है। दिए गए विकल्पों की सहायता से रिक्त स्थानों की पूर्ति कीजिए। प्रत्येक संख्या के लिए सबसे उपयुक्त विकल्प का चयन कीजिए।

भारतवर्ष के उत्तर में 1. \_\_\_\_\_ तथा शेष तीनों 2. \_\_\_\_\_ में समुद्र है। बीच में जंगल, मरुस्थल, छोटे-बड़े राज्य, लहलहाते खेत और सुंदर नगर हैं। इन सब की सुरक्षा का भार 3. \_\_\_\_\_ पर है। पुलिस विभिन्न राज्यों में तथा सेना बाहरी क्षेत्र में अपने 4. \_\_\_\_\_ को निभाते हुए देश की रक्षा करती है। पूरे विश्व में भारतीय सेना को 5. \_\_\_\_\_ माना जाता है।

**SubQuestion No : 20**

**Q.20** रिक्त स्थान 5 की पूर्ति के लिए सबसे उपयुक्त विकल्प का चयन कीजिए।

- Ans**
- 1. आकर्षक
  - 2. सैनिक
  - 3. अकादमी
  - 4. श्रेष्ठ

Question ID : 264330110991

Status : Not Answered

Chosen Option : --

KD Job Updates

# Constable GD in CAPFs SSF Rifleman GD in Assam Rifles and Sepoy in NCB Examination 2022

Roll Number	KD Job Updates
Candidate Name	KD Job Updates
Venue Name	iON Digital Zone iDZ Tirunelveli
Exam Date	30/01/2023
Exam Time	11:45 AM - 12:45 PM
Subject	Constable GD Examination 2022

Section : Part-A-General Intelligence and Reasoning

**Q.1** Select the option that is related to the fifth letter-cluster in the same way as the second letter-cluster is related to the first letter-cluster and the fourth letter-cluster is related to the third letter-cluster.

GKP : FHK :: BJS : AGN :: DIX : ?

- Ans
- 1. ELS
  - 2. EHS
  - 3. CHS
  - 4. CFS

Question ID : 26433057748

Status : Answered

Chosen Option : 4

**Q.2** Which of the numbers(not digits) should be interchanged in the below equation to make it mathematically correct?

$216 \div 9 \times 16 + 24 - 27 = 126$

- Ans
- 1. 16 and 9
  - 2. 27 and 9
  - 3. 24 and 27
  - 4. 9 and 24

Question ID : 264330117564

Status : Not Answered

Chosen Option : --

**Q.3** Select the set in which the numbers are related in the same way as are the numbers of the following sets.

(NOTE : Operations should be performed on the whole numbers, without breaking down the numbers into its constituent digits. E.g. 13 – Operations on 13 such as adding/subtracting/multiplying etc. to 13 can be performed. Breaking down 13 into 1 and 3 and then performing mathematical operations on 1 and 3 is not allowed)

(17, 153, 81)

(19, 171, 81)

- Ans
- 1. (14, 126, 90)
  - 2. (11, 99, 72)
  - 3. (16, 144, 75)
  - 4. (15, 135, 81)

Question ID : 26433076549

Status : Answered

Chosen Option : 4

**Q.4** Select the option that is related to the third word in the same way as the second word is related to the first word.  
(The words must be considered as meaningful English words and must NOT be related to each other based on the number of letters/number of consonants/vowels in the word)  
Smell : Nose :: Colours : ?

- Ans  1. Ears  
 2. Eyes  
 3. Paint  
 4. Rainbow

Question ID : 26433087195  
Status : Answered  
Chosen Option : 2

**Q.5** Which of the following numbers will replace the question marks (?) in the given series?  
10, 20, 15, ?, ?, 30, 25, 35, 30

- Ans  1. 20, 20  
 2. 25, 20  
 3. 25, 25  
 4. 35, 30

Question ID : 26433069045  
Status : Answered  
Chosen Option : 2

**Q.6** Which of the following letter-clusters will replace the question mark (?) and complete the following letter-cluster series?  
MNA, WDB, EVA, KPB, OLA, ?

- Ans  1. QJA  
 2. QJB  
 3. QKA  
 4. QKB

Question ID : 26433067281  
Status : Answered  
Chosen Option : 2

**Q.7** Which of the following numbers will replace the question mark (?) in the given series?  
9, ?, 33, 50, 69, 92, 121

- Ans  1. 20  
 2. 14  
 3. 22  
 4. 16

Question ID : 26433090059  
Status : Not Attempted and Marked For Review  
Chosen Option : --

**Q.8** Three statements are given followed by Three conclusions numbered I, II & III. Assuming the statements to be true, even if they seem to be at variance with commonly known facts, decide which of the conclusions logically follow(s) from the statements.

**Statements:**

Some doctors are tigers.

All tigers are umbrellas.

Some umbrellas are buses.

**Conclusions:**

I. Some doctors are umbrellas.

II. Some tigers are umbrellas.

III. Some buses are umbrellas.

**Ans** ✓ 1. All conclusions follow.

✗ 2. Both conclusions I and III follow.

✗ 3. Both conclusions I and II follow.

✗ 4. Both conclusions II and III follow.

Question ID : 26433081795

Status : Answered

Chosen Option : 2

**Q.9** Seven people S, F, A, G, D, H, and T are sitting in a straight row, facing north. Only two people sit to the right of G. F is third to the right of A. S is the immediate neighbour to D and A. G is the immediate neighbour to F and H. Who sits at the extreme right of the row?

**Ans** ✓ 1. T

✗ 2. H

✗ 3. G

✗ 4. A

Question ID : 26433092597

Status : Answered

Chosen Option : 1

**Q.10** In a certain code language, 'LAST' is written as 'NCQR' and 'CAKE' is written as 'ECIC'. How will 'JUMP' be written in that language?

**Ans** ✓ 1. LWKN

✗ 2. WLKN

✗ 3. WLNK

✗ 4. LWNK

Question ID : 26433068893

Status : Answered

Chosen Option : 1

Q.11 Which two signs should be interchanged to make the below equation mathematically correct?

$$8 + 32 \div 16 \times 11 - 5 = 22$$

- Ans
- 1.  $\times$  and  $\div$
  - 2.  $-$  and  $+$
  - 3.  $\div$  and  $-$
  - 4.  $+$  and  $\times$

Question ID : 264330114179

Status : Answered

Chosen Option : 4

Q.12 Preethi arranges different colours of teddy bears in her bedroom in two parallel rows facing each other such that four teddies are in each row. Orange, Yellow, Grey and Brown teddies are in Row 1 facing north, while Red, White, Black and Pink teddies are in Row 2 facing south. Orange teddy is adjacent to the Grey teddy. Pink teddy does not face the Orange one. White teddy faces the one that is second to the right of the Grey teddy. The Black one is second to the right of the Pink teddy. The Brown teddy is not at any of the corners. The Orange teddy is not at any of the extreme ends. The Grey teddy faces the Red one. How many teddies are there between Red and White teddies?

- Ans
- 1. Two
  - 2. Three
  - 3. zero
  - 4. One

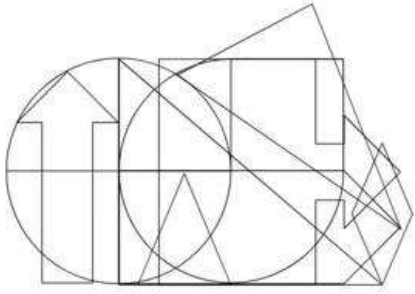
Question ID : 26433079066

Status : Not Answered

Chosen Option : --

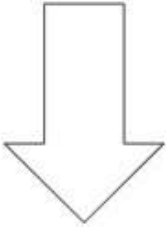
KD Job Updates

Q.13 Select the option figure which is embedded in the given figure. (Rotation is NOT allowed)

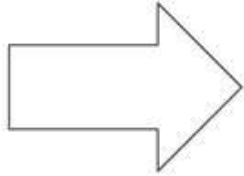


Ans

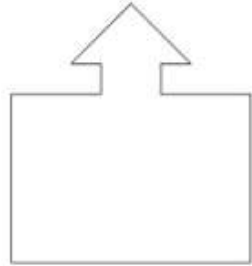
✗ 1.



✗ 2.



✗ 3.



✓ 4.



KD Job Updates

Question ID : 26433085747

Status : Answered

Chosen Option : 4



Q.14 Which letter cluster will replace the question mark (?) to complete the given series?  
GYCQ, ICZR, ?, MKTT, OOQU

- Ans
- 1. QDRS
  - 2. KRRS
  - 3. RRKS
  - 4. KGWS

Question ID : 26433079427  
Status : Answered  
Chosen Option : 4

Q.15 Select the correct mirror image of the given figure when the mirror is placed at MN  
as shown below.



- Ans
- 1. k n u 3 1 3 p q k
  - 2. k u n 3 u n k
  - 3. k u n 3 u n k
  - 4. k 2 p q 1 3 u n k

Question ID : 26433082334  
Status : Answered  
Chosen Option : 3

Q.16 Which option represents the correct order of the given words as they would appear in the English dictionary?  
1 Flower  
2 Flow  
3 Floor  
4 Flour  
5 Flame

- Ans
- 1. 5,3,1,2,4
  - 2. 5,3,4,2,1
  - 3. 5,4,3,2,1
  - 4. 2,3,4,1,5

Question ID : 26433069267  
Status : Answered  
Chosen Option : 2

Q.17 'X – Y' means 'X is the brother of Y'  
'X # Y' means 'X is the daughter of Y'  
'X \* Y' means 'X is the father of Y'  
'X \$ Y' means 'X is the wife of Y'  
If 'A \$ B – D \* C', then how is A related to D?

Ans  1. A is the sister-in-law of D

2. A is the sister of D

3. A is the daughter of D

4. A is the son of D

Question ID : 26433087128

Status : Answered

Chosen Option : 1

Q.18 In a certain code language, 'TEA' is coded as 26 and 'DANCE' is coded as 27. How will 'CROWN' be coded in that language?

Ans  1. 54

2. 47

3. 68

4. 73

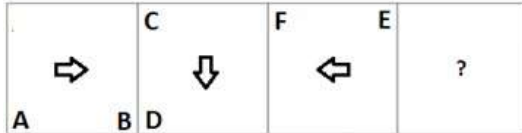
Question ID : 26433074518

Status : Answered

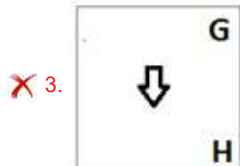
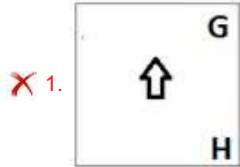
Chosen Option : 4

KD Job Updates

**Q.19** Select the figure from among the given options that can replace the question mark (?) in the following series.



Ans



Question ID : 26433074725  
 Status : Answered  
 Chosen Option : 2

**Q.20** Two different positions of the same dice are shown having symbols- \$, Δ, ¥, Ω, O and \*. Find the symbol on the face opposite the face showing 'O'.



- Ans
- ✗ 1. \$
  - ✓ 2. \*
  - ✗ 3. ¥
  - ✗ 4. Ω

Question ID : 26433085508  
 Status : Answered  
 Chosen Option : 2

**Q.1** How many nations (including EOR and ROC teams) participated in the 2020 Summer Olympics?

- Ans
- 1. 210
  - 2. 203
  - 3. 206
  - 4. 209

Question ID : 264330115913  
Status : Not Answered  
Chosen Option : --

**Q.2** It connects all types of computers across the world. Which communication technology is being spoken about here?

- Ans
- 1. Internet
  - 2. Pager
  - 3. Post cards
  - 4. Cable

Question ID : 264330115598  
Status : Not Answered  
Chosen Option : --

**Q.3** Which among the following pairs of ore-metal is incorrect?

- Ans
- 1. Bornite - Copper
  - 2. Cinnabar - Nickel
  - 3. Magnetite - Iron
  - 4. Galena - Lead

Question ID : 264330115146  
Status : Answered  
Chosen Option : 2

**Q.4** After the passage of which Constitutional Amendment Act, are there now six fundamental rights?

- Ans
- 1. 102<sup>nd</sup> Amendment in 1996
  - 2. 44<sup>th</sup> Amendment in 1952
  - 3. 11<sup>th</sup> Amendment in 1952
  - 4. 44<sup>th</sup> Amendment in 1978

Question ID : 26433089911  
Status : Not Answered  
Chosen Option : --

**Q.5 Which of the following is the largest tributary of the Indus river?**

- Ans  1. Sutlej River  
 2. Shyok River  
 3. Chenab River  
 4. Ravi River

Question ID : 26433089665  
Status : Answered  
Chosen Option : 3

**Q.6 Among the given options, Ministry of Social Justice and Empowerment doesn't patronise \_\_\_\_\_.**

- Ans  1. e-Shram  
 2. Nasha Mukht Bharat Abhiyaan  
 3. e-ANUDAAN  
 4. National Portal for Transgender persons

Question ID : 264330116193  
Status : Not Answered  
Chosen Option : --

**Q.7 As per 2011 census, which Indian state has the lowest literacy rate?**

- Ans  1. Maharashtra  
 2. Bihar  
 3. Uttar Pradesh  
 4. Jharkhand

Question ID : 264330116056  
Status : Answered  
Chosen Option : 2

**Q.8 As of December 2022, who among the following is the Governor of West Bengal, India?**

- Ans  1. Ashok Gehlot  
 2. Jagdeep Dhankar  
 3. CV Ananda Bose  
 4. Mamata Banerjee

Question ID : 264330114898  
Status : Answered  
Chosen Option : 3

Q.9 Which of the following Metals of Harappan civilization got from present-day Rajasthan and Oman?

- Ans
- 1. Tin
  - 2. Gold
  - 3. Silver
  - 4. Copper

Question ID : 264330115444  
Status : Not Answered  
Chosen Option : --

Q.10 \_\_\_\_\_ war took place during fourth five year plan.

- Ans
- 1. India -Pakistan
  - 2. Indo China
  - 3. World war II
  - 4. World war I

Question ID : 264330115364  
Status : Not Answered  
Chosen Option : --

Q.11 Bathukamma, a flower festival, is celebrated in which of the following states?

- Ans
- 1. Tamil Nadu
  - 2. Gujarat
  - 3. Telangana
  - 4. Rajasthan

Question ID : 264330115084  
Status : Not Answered  
Chosen Option : --

Q.12 In India, the Industrial Policy Resolution was passed in the year \_\_\_\_\_ for the first time.

- Ans
- 1. 1948
  - 2. 1949
  - 3. 1946
  - 4. 1947

Question ID : 264330116142  
Status : Not Answered  
Chosen Option : --

Q.13 The maximum strength of the Lower House of Parliament is:

- Ans  1. 500  
 2. 590  
 3. 552  
 4. 250

Question ID : 26433089969  
Status : Answered  
Chosen Option : 3

Q.14 \_\_\_\_\_ is defined as the body's ability to function efficiently and effectively in work and leisure activities, to be healthy, to resist diseases and to meet emergency situations.

- Ans  1. aerobic fitness  
 2. muscular endurance  
 3. mental fitness  
 4. physical fitness

Question ID : 264330115230  
Status : Not Answered  
Chosen Option : --

Q.15 E Krishna Iyer was related to which classical dance form?

- Ans  1. Odissi  
 2. Kathak  
 3. Sattriya  
 4. Bharatnatyam

Question ID : 26433072927  
Status : Answered  
Chosen Option : 4

Q.16 National Income = C (household consumption) + G(\_\_\_\_\_) + I (investment expense) + NX (net exports).

- Ans  1. household expenditure  
 2. government expenditure  
 3. individual expenditure  
 4. non government expenditure

Question ID : 264330115351  
Status : Not Answered  
Chosen Option : --

Q.17 Ranji Trophy is related to which of the following game?

- Ans  1. Tennis  
 2. Cricket  
 3. Baseball  
 4. Football

Question ID : 264330116261  
Status : Answered  
Chosen Option : 2

Q.18 Which among the following received the Kerala Sangeet Natak Academy fellowship (1974)?

- Ans  1. Kalamandalam Kalyanikutty Amma  
 2. Anuradha Pandey  
 3. Shovana Narayan  
 4. Mahaboob Subhani

Question ID : 264330115847  
Status : Not Answered  
Chosen Option : --

Q.19 Which of the following monuments has been declared a national monument by the Prime Minister of India in November 2022?

- Ans  1. Rukhmini Temple  
 2. Mangarh Dham  
 3. Musa Bagh  
 4. Gol Gumbaz

Question ID : 264330115054  
Status : Not Answered  
Chosen Option : --

Q.20 Mahatma Gandhi returned to Indian in January \_\_\_\_\_.

- Ans  1. 1911  
 2. 1917  
 3. 1919  
 4. 1915

Question ID : 26433089898  
Status : Answered  
Chosen Option : 1



Q.1 A thief started running after seeing a policeman at a distance of 225 m. Instantly, the policeman started chasing the thief. The thief and the police ran at the rate of 9 km/h and 10 km/h respectively. Find the distance between them after 4.2 min.

- Ans
- 1. 180 m
  - 2. 175 m
  - 3. 165 m
  - 4. 155 m

Question ID : 26433075923

Status : **Not Attempted and Marked For Review**

Chosen Option : --

Q.2 In one hill station train there are three categories of seats. The seats are numbered from 1 to 50 in the first class, 51 to 150 in the second class and 151 to 300 in the third class. Every December, the seat occupancy was 30% in the first class, 50% in the second class and 100% in the third class. If the per seat charges are ₹2,000, ₹1,000 and ₹500 in first class, second class and third class respectively, then the income ratio per category in December month is:

- Ans
- 1. 6 : 10 : 15
  - 2. 4 : 2 : 1
  - 3. 1 : 2 : 3
  - 4. 3 : 10 : 30

Question ID : 26433079945

Status : **Not Answered**

Chosen Option : --

Q.3 A man gives two successive discounts of 8 percent and 6 percent on a chair, which has the marked price of Rs. 1200. How much would be the selling price of the chair?

- Ans
- 1. Rs. 1176.52
  - 2. Rs. 1080.54
  - 3. Rs. 1037.76
  - 4. Rs. 1104.24

Question ID : 264330116762

Status : **Not Attempted and Marked For Review**

Chosen Option : --

Q.4 A shopkeeper gives 3 toys free of cost on buying 9 toys and all toys are of same type. What is the discount percentage that a customer gets?

- Ans
- 1. 25%
  - 2. 10%
  - 3. 20%
  - 4. 15%

Question ID : 26433076428  
Status : Not Answered  
Chosen Option : --

Q.5 Pinky fills her car tank with 20 liters of petrol. She goes on a journey and end up with just 5.5 liters of petrol left in the tank. What is the percent change in the petrol in the tank?

- Ans
- 1. 14.5 percent
  - 2. 72.5 percent
  - 3. 5.5 percent
  - 4. 85.5 percent

Question ID : 264330116797  
Status : Answered  
Chosen Option : 2

Q.6 On 10 February 2014, a train leaves Delhi at 6 a.m. and reaches Jainagar at 10 a.m.. Another train leaves Jainagar at 8 a.m. and reaches Delhi at 11:30 a.m.. At what time do the two trains cross each other?

- Ans
- 1. 6:56 a.m.
  - 2. 9:15 a.m.
  - 3. 8:48 a.m.
  - 4. 8:56 a.m.

Question ID : 26433075887  
Status : Answered  
Chosen Option : 2

Q.7 A car runs 450 km on 35 litres of petrol. How many kilometres can the car run on 25 litres of petrol (rounded off to two decimal places)?

- Ans
- 1. 323.42 km
  - 2. 324.42 km
  - 3. 322.42 km
  - 4. 321.43 km

Question ID : 26433079775  
Status : Answered  
Chosen Option : 4

**Q.8** Anay does the  $\frac{5}{11}$ th part of the work in 10 days and Rohan does the  $\frac{5}{6}$ th of the same work in 15 days. They started together but Rohan left the work 5 days before the completion of the work and Anay completed the work. Find the number of days after which Rohan left work.

- Ans  1.  $\frac{153}{20}$  days  
 2.  $\frac{177}{20}$  days  
 3.  $\frac{140}{9}$  days  
 4.  $\frac{186}{9}$  days

Question ID : 264330116877

Status : Not Attempted and Marked For Review

Chosen Option : --

**Q.9** A and B alone can do a piece of work in 7 days and 14 days respectively. In how many days the work will be completed if they both work on alternate days starting with A?

- Ans  1. 10  
 2. 8  
 3. 9  
 4. 11

Question ID : 26433074310

Status : Answered

Chosen Option : 3

**Q.10** A shopkeeper marks his goods 12% above the cost price and allows 6% discount. What profit percentage does he make?

- Ans  1. 5.82%  
 2. 6%  
 3. 5.5%  
 4. 5.28%

Question ID : 26433075187

Status : Answered

Chosen Option : 2

**Q.11** In a pharma company, a scientist is mixing the purified form of Acetone and Toluene to invent some medicine. The cost of the solution obtained after mixing Acetone and Toluene is Rs.16 per litre. Acetone costs Rs.14 per litre to the scientist. Due to storage issue, Toluene's cost is expensive than Acetone to the scientist. The ratio of Toluene to Acetone in the solution is 4 : 1. What is the cost of Toluene per litre (in ₹) to the scientist?

- Ans  1. 21  
 2. 18.5  
 3. 16.5  
 4. 20

Question ID : 26433081639

Status : Not Answered

Chosen Option : --

Q.12 If a rectangle has 10 cm long diagonal and perimeter 28 cm, then the area of the rectangle is:

- Ans
- 1.  $60 \text{ cm}^2$
  - 2.  $24 \text{ cm}^2$
  - 3.  $48 \text{ cm}^2$
  - 4.  $96 \text{ cm}^2$

Question ID : 26433087405  
Status : Not Answered  
Chosen Option : --

Q.13 In an election, Rashika and Nikita were against each other. Rashika received 54% votes and won the election by 1280 votes. How many total votes were cast in the election?

- Ans
- 1. 15500
  - 2. 15000
  - 3. 16000
  - 4. 16500

Question ID : 26433080295  
Status : Answered  
Chosen Option : 3

Q.14 How much approximate amount will be received on a principal of ₹40,000 at the rate of 8% per annum to be compounded half yearly at the end of one and half years?

- Ans
- 1. ₹44,995
  - 2. ₹45,625
  - 3. ₹42,675
  - 4. ₹43,915

Question ID : 26433091561  
Status : Answered  
Chosen Option : 1

Q.15 The average of first five prime number is:

- Ans
- 1. 5.6
  - 2. 5.2
  - 3. 5.4
  - 4. 5.5

Question ID : 26433075638  
Status : Answered  
Chosen Option : 1

Q.16 If the surface area of a sphere is  $5544 \text{ cm}^2$ , what is its volume?

- Ans
- 1.  $38,809 \text{ cm}^3$
  - 2.  $38,808 \text{ cm}^3$
  - 3.  $36,864 \text{ cm}^3$
  - 4.  $37,800 \text{ cm}^3$

Question ID : 26433066325  
Status : Not Answered  
Chosen Option : --

Q.17 Find the value of  $-67 + 700 \div [85 - \{8 \times 9 + (28 - 5 \times 5)\}]$ .

- Ans
- 1. 4
  - 2. 1
  - 3. 2
  - 4. 3

Question ID : 26433082952  
Status : Answered  
Chosen Option : 4

Q.18 A sum of Rs.9,350 was taken as a loan. This is paid in two equal instalments. If the rate of interest is 20% per annum compounded annually, then what is the value of each instalment?

- Ans
- 1. Rs.2600
  - 2. Rs.2160
  - 3. Rs.6120
  - 4. Rs.6200

Question ID : 26433075349  
Status : Not Answered  
Chosen Option : --

Q.19 If a seven-digit number 42971K2 is divisible by 44, then the value of K is:

- Ans
- 1. 4
  - 2. 7
  - 3. 5
  - 4. 6

Question ID : 26433075714  
Status : Answered  
Chosen Option : 2

Q.20 If Ram, Robert and Rahim started a firm by investing ₹50,000, ₹30,000 and ₹40,000 respectively for the same time period, then the ratio of the share of Rahim to that of Robert is \_\_\_\_\_, out of the profit of ₹18,000.

- Ans  1. 4 : 3  
 2. 3 : 4  
 3. 4 : 5  
 4. 3 : 5

Question ID : 26433079929  
Status : Not Answered  
Chosen Option : --

Section : Part-D-English

Q.1 Complete the sentence by choosing the most appropriate synonym of the underlined word.

When you look at something you \_\_\_\_\_ it.

- Ans  1. hear  
 2. see  
 3. ignore  
 4. touch

Question ID : 26433088865  
Status : Answered  
Chosen Option : 2

Q.2 Select the option that expresses the given sentence in past perfect tense.

- A. I read a lot about mythology.  
B. I had been reading a lot about mythology.  
C. I was reading a lot about mythology.  
D. I had read a lot about mythology.

- Ans  1. C  
 2. D  
 3. B  
 4. A

Question ID : 26433073517  
Status : Not Answered  
Chosen Option : --

Q.3 Select the most appropriate option to fill in the blank.

One night, a hunter \_\_\_\_\_ near a river when he began to dream.

- Ans  1. was slept  
 2. sleep  
 3. is sleeping  
 4. was sleeping

Question ID : 26433072727  
Status : Answered  
Chosen Option : 1

Q.4 Identify the MISSPELT word in the following sentence.

As they only require minimal supervision and support, naturally bright learners are largely unaffected by classroom dynamics.

- Ans
- 1. minimal
  - 2. supervision
  - 3. dinamics
  - 4. unaffected

Question ID : 26433073662  
Status : Answered  
Chosen Option : 3

Q.5 Select the most appropriate option that can substitute the underlined segment in the given sentence. If there is no need to substitute it, select 'No substitution'.

The entire economy has been effected by the riots in the state.

- Ans
- 1. have been effected
  - 2. No substitution
  - 3. have been affected
  - 4. has been affected

Question ID : 26433091765  
Status : Answered  
Chosen Option : 3

Q.6 Select the most appropriate ANTONYM of the underlined word.

Blunt objects will not have that much impact.

- Ans
- 1. Sharp
  - 2. Honest
  - 3. Torrid
  - 4. Lame

Question ID : 26433094733  
Status : Not Answered  
Chosen Option : --

Q.7 Select the most appropriate ANTONYM of the given word.

Sage

- Ans
- 1. Useless
  - 2. Threatening
  - 3. Foolish
  - 4. Plain

Question ID : 26433073804  
Status : Not Answered  
Chosen Option : --

Q.8 Fill in the blanks with the correct homophone.

Before planning a trip, considering the \_\_\_\_\_ for the trip is necessary.

- Ans
- 1. fair
  - 2. fare
  - 3. fore
  - 4. fear

Question ID : 26433092934  
Status : Answered  
Chosen Option : 2

Q.9 Select the most appropriate meaning of the given idiom.

Done for

- Ans
- 1. Retreated
  - 2. Depreciated
  - 3. Finished a job
  - 4. Ruined

Question ID : 26433086330  
Status : Answered  
Chosen Option : 3

Q.10 Select the most appropriate meaning of the underlined idiom that can be substituted in the following sentence.

The new Prince is not fit to hold a candle to his dead father.

- Ans
- 1. holding the light to
  - 2. cannot to be compared with
  - 3. holding in high esteem,
  - 4. showing the way to

Question ID : 26433072237  
Status : Answered  
Chosen Option : 2

Q.11 Select the most appropriate option that can substitute the underlined segment in the given sentence. If there is no need to substitute it, select 'No substitution'.  
To stay healthy, you must keep away from smoking.

- Ans
- 1. No substitution
  - 2. you can keep away from smoking.
  - 3. you will keep away from smoking.
  - 4. you may keep away from smoking.

Question ID : 26433093080  
Status : Not Answered  
Chosen Option : --



Q.12 Select the most appropriate synonym of the given word.

Glimpse

- Ans  1. Vision  
 2. Glance  
 3. Gawk  
 4. See through

Question ID : 26433073393  
Status : Answered  
Chosen Option : 2

Q.13 Select the INCORRECTLY spelt word.

- Ans  1. Moan  
 2. Definite  
 3. Extinguish  
 4. Consientious

Question ID : 26433073741  
Status : Answered  
Chosen Option : 4

Q.14 Select the most appropriate option to fill in the blank.

The farmers used to \_\_\_\_\_ seeds by this time.

- Ans  1. soe  
 2. sew  
 3. sow  
 4. so

Question ID : 26433089070  
Status : Answered  
Chosen Option : 3

Q.15 Select the most appropriate antonym of the given word.

Extravagant

- Ans  1. Frugal  
 2. Wicked  
 3. Mean  
 4. Wasteful

Question ID : 26433072358  
Status : Not Answered  
Chosen Option : --

**Comprehension:**

In the following passage, some words have been deleted. Read the passage carefully and select the most appropriate option to fill in each blank.

The Great Depression was a severe (1) \_\_\_\_\_ economic depression in the decade (2) \_\_\_\_\_ World War II. In most countries the depression (3) \_\_\_\_\_ in about 1929 and lasted until the late 1930s or early 1940s. It was the longest, most widespread, and deepest depression of the 20th century. In the 21st century, the Great Depression is commonly used as an example of how far the world's economy can (4) \_\_\_\_\_.

The depression originated in the U.S. Economic historians usually (5) \_\_\_\_\_ the start of the Great Depression to the sudden devastating collapse of US stock market prices on 29 October 1929, known as Black Tuesday; some dispute this conclusion, and see the stock crash as a symptom, rather than a cause, of the Great Depression.

**SubQuestion No : 16**

**Q.16 Select the most appropriate option to fill in blank number 1.**

- Ans  1. worldwide  
 2. statewide  
 3. nationwide  
 4. citywide

Question ID : 26433060646

Status : Answered

Chosen Option : 1

**Comprehension:**

In the following passage, some words have been deleted. Read the passage carefully and select the most appropriate option to fill in each blank.

The Great Depression was a severe (1) \_\_\_\_\_ economic depression in the decade (2) \_\_\_\_\_ World War II. In most countries the depression (3) \_\_\_\_\_ in about 1929 and lasted until the late 1930s or early 1940s. It was the longest, most widespread, and deepest depression of the 20th century. In the 21st century, the Great Depression is commonly used as an example of how far the world's economy can (4) \_\_\_\_\_.

The depression originated in the U.S. Economic historians usually (5) \_\_\_\_\_ the start of the Great Depression to the sudden devastating collapse of US stock market prices on 29 October 1929, known as Black Tuesday; some dispute this conclusion, and see the stock crash as a symptom, rather than a cause, of the Great Depression.

**SubQuestion No : 17**

**Q.17 Select the most appropriate option to fill in blank number 2.**

- Ans  1. proceeding  
 2. receding  
 3. succeeding  
 4. preceding

Question ID : 26433060647

Status : Answered

Chosen Option : 3

**Comprehension:**

In the following passage, some words have been deleted. Read the passage carefully and select the most appropriate option to fill in each blank.

The Great Depression was a severe (1) \_\_\_\_\_ economic depression in the decade (2) \_\_\_\_\_ World War II. In most countries the depression (3) \_\_\_\_\_ in about 1929 and lasted until the late 1930s or early 1940s. It was the longest, most widespread, and deepest depression of the 20th century. In the 21st century, the Great Depression is commonly used as an example of how far the world's economy can (4) \_\_\_\_\_.

The depression originated in the U.S. Economic historians usually (5) \_\_\_\_\_ the start of the Great Depression to the sudden devastating collapse of US stock market prices on 29 October 1929, known as Black Tuesday; some dispute this conclusion, and see the stock crash as a symptom, rather than a cause, of the Great Depression.

**SubQuestion No : 18**

**Q.18 Select the most appropriate option to fill in blank number 3.**

- Ans  1. started  
 2. followed  
 3. proceeded  
 4. ended

Question ID : 26433060648

Status : Answered

Chosen Option : 1

**Comprehension:**

In the following passage, some words have been deleted. Read the passage carefully and select the most appropriate option to fill in each blank.

The Great Depression was a severe (1) \_\_\_\_\_ economic depression in the decade (2) \_\_\_\_\_ World War II. In most countries the depression (3) \_\_\_\_\_ in about 1929 and lasted until the late 1930s or early 1940s. It was the longest, most widespread, and deepest depression of the 20th century. In the 21st century, the Great Depression is commonly used as an example of how far the world's economy can (4) \_\_\_\_\_.

The depression originated in the U.S. Economic historians usually (5) \_\_\_\_\_ the start of the Great Depression to the sudden devastating collapse of US stock market prices on 29 October 1929, known as Black Tuesday; some dispute this conclusion, and see the stock crash as a symptom, rather than a cause, of the Great Depression.

**SubQuestion No : 19**

**Q.19 Select the most appropriate option to fill in blank number 4.**

- Ans  1. negate  
 2. backtrack  
 3. decline  
 4. slip

Question ID : 26433060649

Status : Not Answered

Chosen Option : --

**Comprehension:**

In the following passage, some words have been deleted. Read the passage carefully and select the most appropriate option to fill in each blank.

The Great Depression was a severe (1) \_\_\_\_\_ economic depression in the decade (2) \_\_\_\_\_ World War II. In most countries the depression (3) \_\_\_\_\_ in about 1929 and lasted until the late 1930s or early 1940s. It was the longest, most widespread, and deepest depression of the 20th century. In the 21st century, the Great Depression is commonly used as an example of how far the world's economy can (4) \_\_\_\_\_.

The depression originated in the U.S. Economic historians usually (5) \_\_\_\_\_ the start of the Great Depression to the sudden devastating collapse of US stock market prices on 29 October 1929, known as Black Tuesday; some dispute this conclusion, and see the stock crash as a symptom, rather than a cause, of the Great Depression.

**SubQuestion No : 20**

**Q.20** Select the most appropriate option to fill in blank number 5.

- Ans
- 1. merit
  - 2. emblem
  - 3. assign
  - 4. attribute

Question ID : 26433060650  
Status : Not Answered  
Chosen Option : --

Section : Part-D-Hindi

**Q.1** 'जो बहुत बोलता है', वाक्यांश के लिए एक शब्द \_\_\_\_\_ है।

- Ans
- 1. बधिर
  - 2. बंधुआ
  - 3. बहका
  - 4. वाचाल

Question ID : 26433062939  
Status : Not Answered  
Chosen Option : --

**Q.2** निम्नलिखित में से किस वाक्य में 'उत्तम पुरुष सर्वनाम' सम्बन्धी अशुद्धि है?

- Ans
- 1. हमारे गाँव यहाँ से 200 मील दूर है।
  - 2. मुझे दिन में तीन बार जूस पीना होता है।
  - 3. मेरा नाम राहुल है।
  - 4. मुझे कल दिल्ली जाना है।

Question ID : 26433063000  
Status : Not Answered  
Chosen Option : --

Q.3 निम्नलिखित शब्द के सही पर्यायवाची शब्द का चयन विकल्पों में से कीजिए।  
सोना

- Ans  1. कंचन  
 2. रजत  
 3. सुमन  
 4. कंगन

Question ID : 26433066943  
Status : Not Answered  
Chosen Option : --

Q.4 'तिनकों का घर' वाक्यांश के लिए इनमें से उपयुक्त शब्द कौन-सा है?

- Ans  1. आरसी  
 2. महल  
 3. कुटज  
 4. उटज

Question ID : 26433066888  
Status : Not Answered  
Chosen Option : --

Q.5 निम्नलिखित में से किस वाक्य में वर्तनीगत अशुद्धि है?

- Ans  1. 'आर्यावर्त' एक राष्ट्रीय दैनिक है।  
 2. यहाँ अंतर्विश्वविद्यालय प्रतियोगिता होगी।  
 3. वह मेरा इकलौता बेटा है।  
 4. उसने मोतियों का एक हार खरीदा।

Question ID : 26433079233  
Status : Not Answered  
Chosen Option : --

Q.6 निम्न विकल्पों में से शुद्ध वाक्य का चयन कीजिए।

- Ans  1. बेटी बेटा से पूछा।  
 2. बेटो बेटियों से पूछा।  
 3. बेटे ने बेटी से पूछा।  
 4. बेटा ने बेटी से पूछा।

Question ID : 26433063039  
Status : Not Answered  
Chosen Option : --

Q.7 'वह पढ़ना माँगता है।' इस वाक्य में रेखांकित शब्द के स्थान पर उपयुक्त शब्द क्या होगा?

- Ans
- 1. जाता
  - 2. सोचता
  - 3. चाहता
  - 4. खाता

Question ID : 26433062206  
Status : Not Answered  
Chosen Option : --

Q.8 पिछले साल गाँव में भयानक बाढ़ आई थी।  
उपरोक्त वाक्य में रेखांकित शब्द के विलोम शब्द का चयन कीजिए।

- Ans
- 1. सूखा
  - 2. अकाल
  - 3. नदी
  - 4. पानी

Question ID : 26433069761  
Status : Not Answered  
Chosen Option : --

Q.9 निम्नलिखित में से 'अपेक्षा' का अर्थ नहीं होता है-

- Ans
- 1. आशा
  - 2. विचार
  - 3. आवश्यकता
  - 4. इच्छा

Question ID : 26433080947  
Status : Not Answered  
Chosen Option : --

Q.10 'लताओं से आच्छादित रमणीय स्थान'  
ऊपर दिए गए वाक्यांश के लिए एक शब्द क्या होगा?

- Ans
- 1. निकुंज
  - 2. वट
  - 3. अमराई
  - 4. जंगल

Question ID : 26433070060  
Status : Not Answered  
Chosen Option : --

Q.11 'राम ने केबल दो रूपये लिए।' इस वाक्य के किस शब्द में वर्तनीगत अशुद्धि है?

- Ans
- 1. लिए
  - 2. राम
  - 3. रूपये
  - 4. केबल

Question ID : 26433085063  
Status : Not Answered  
Chosen Option : --

Q.12 'एक और एक ग्यारह' होते हैं।' इस मुहावरे का सही अर्थ है -

- Ans
- 1. गलत लोगों का समूह
  - 2. एक कार्य के दो लाभ
  - 3. संगठन में शक्ति
  - 4. बड़ा समूह

Question ID : 26433062606  
Status : Not Answered  
Chosen Option : --

Q.13 निम्नलिखित मुहावरे का उपयुक्त अर्थ क्या होगा?  
खून का घूंट पीना

- Ans
- 1. भाग जाना
  - 2. चुगली करना
  - 3. कोई गर्म चीज पीना
  - 4. क्रोध दबाना

Question ID : 26433065779  
Status : Not Answered  
Chosen Option : --

Q.14 'मैं रविवार के दिन तुम्हारे घर आऊंगा।' इस वाक्य में रेखांकित शब्द के स्थान सही पर शब्द क्या होगा?

- Ans
- 1. को
  - 2. में
  - 3. के लिए
  - 4. पर

Question ID : 26433085057  
Status : Not Answered  
Chosen Option : --

Q.15 'वसन' के दो अर्थ हैं। एक अर्थ है 'स्त्रियों के कमर का एक आभूषण'। इसके दूसरे अर्थ से निम्न वाक्य पूर्ण कीजिए।

'नए \_\_\_\_\_ से पूजा करने की विधि है।'

- Ans
- 1. घंटी
  - 2. ज्योति
  - 3. वस्त्र
  - 4. सिंदूर

Question ID : 26433079238

Status : Not Answered

Chosen Option : --

**Comprehension:**

निम्नलिखित गद्यांश में कुछ शब्दों को हटा दिया गया है। दिए गए विकल्पों की सहायता से रिक्त स्थानों की पूर्ति कीजिए। प्रत्येक संख्या के लिए सबसे उपयुक्त विकल्प का चयन कीजिए।  
परिश्रम 1. \_\_\_\_\_ का द्वार है। मनुष्य 2. \_\_\_\_\_ के सहारे ही विकसित अवस्था तक पहुंचा है। उसी के सहारे उसने अन्न उपजाया। 3. \_\_\_\_\_ का विकास किया, जिसके सहारे आज यहाँ जगमगाती सभ्यता चल रही है।  
4. \_\_\_\_\_ से किया गया परिश्रम ही परिश्रम कहलाता है। परिश्रम करने वाला मनुष्य सदा सुखी रहता है।  
परिश्रमी व्यक्ति का जीवन 5. \_\_\_\_\_ से पूर्ण होता है।

SubQuestion No : 16

Q.16 रिक्त स्थान 1 की पूर्ति के लिए सबसे उपयुक्त विकल्प का चयन करें।

- Ans
- 1. अवनति
  - 2. उन्नति
  - 3. अधःपतन
  - 4. झुकाव

Question ID : 264330110885

Status : Not Answered

Chosen Option : --

**Comprehension:**

निम्नलिखित गद्यांश में कुछ शब्दों को हटा दिया गया है। दिए गए विकल्पों की सहायता से रिक्त स्थानों की पूर्ति कीजिए। प्रत्येक संख्या के लिए सबसे उपयुक्त विकल्प का चयन कीजिए।  
परिश्रम 1. \_\_\_\_\_ का द्वार है। मनुष्य 2. \_\_\_\_\_ के सहारे ही विकसित अवस्था तक पहुंचा है। उसी के सहारे उसने अन्न उपजाया। 3. \_\_\_\_\_ का विकास किया, जिसके सहारे आज यहाँ जगमगाती सभ्यता चल रही है।  
4. \_\_\_\_\_ से किया गया परिश्रम ही परिश्रम कहलाता है। परिश्रम करने वाला मनुष्य सदा सुखी रहता है।  
परिश्रमी व्यक्ति का जीवन 5. \_\_\_\_\_ से पूर्ण होता है।

SubQuestion No : 17

Q.17 रिक्त स्थान 2 की पूर्ति के लिए सबसे उपयुक्त विकल्प का चयन करें।

- Ans
- 1. विश्राम
  - 2. अवकाश
  - 3. परिश्रम
  - 4. अनुद्यम

Question ID : 264330110886

Status : Not Answered

Chosen Option : --



**Comprehension:**

निम्नलिखित गद्यांश में कुछ शब्दों को हटा दिया गया है। दिए गए विकल्पों की सहायता से रिक्त स्थानों की पूर्ति कीजिए। प्रत्येक संख्या के लिए सबसे उपयुक्त विकल्प का चयन कीजिए।  
परिश्रम 1. \_\_\_\_\_ का द्वार है। मनुष्य 2. \_\_\_\_\_ के सहारे ही विकसित अवस्था तक पहुंचा है। उसी के सहारे उसने अन्न उपजाया। 3. \_\_\_\_\_ का विकास किया, जिसके सहारे आज यहाँ जगमगाती सभ्यता चल रही है।  
4. \_\_\_\_\_ से किया गया परिश्रम ही परिश्रम कहलाता है। परिश्रम करने वाला मनुष्य सदा सुखी रहता है।  
परिश्रमी व्यक्ति का जीवन 5. \_\_\_\_\_ से पूर्ण होता है।

**SubQuestion No : 18**

Q.18 रिक्त स्थान 3 की पूर्ति के लिए सबसे उपयुक्त विकल्प का चयन करें।

- Ans  1. तकनीक  
 2. स्कूल  
 3. कॉलेज  
 4. कारखाना

Question ID : 264330110887

Status : Not Answered

Chosen Option : --

**Comprehension:**

निम्नलिखित गद्यांश में कुछ शब्दों को हटा दिया गया है। दिए गए विकल्पों की सहायता से रिक्त स्थानों की पूर्ति कीजिए। प्रत्येक संख्या के लिए सबसे उपयुक्त विकल्प का चयन कीजिए।  
परिश्रम 1. \_\_\_\_\_ का द्वार है। मनुष्य 2. \_\_\_\_\_ के सहारे ही विकसित अवस्था तक पहुंचा है। उसी के सहारे उसने अन्न उपजाया। 3. \_\_\_\_\_ का विकास किया, जिसके सहारे आज यहाँ जगमगाती सभ्यता चल रही है।  
4. \_\_\_\_\_ से किया गया परिश्रम ही परिश्रम कहलाता है। परिश्रम करने वाला मनुष्य सदा सुखी रहता है।  
परिश्रमी व्यक्ति का जीवन 5. \_\_\_\_\_ से पूर्ण होता है।

**SubQuestion No : 19**

Q.19 रिक्त स्थान 4 की पूर्ति के लिए सबसे उपयुक्त विकल्प का चयन करें।

- Ans  1. मन रहित  
 2. अमन  
 3. मन तथा बुद्धि  
 4. अपमान

Question ID : 264330110888

Status : Not Answered

Chosen Option : --

**Comprehension:**

निम्नलिखित गद्यांश में कुछ शब्दों को हटा दिया गया है। दिए गए विकल्पों की सहायता से रिक्त स्थानों की पूर्ति कीजिए। प्रत्येक संख्या के लिए सबसे उपयुक्त विकल्प का चयन कीजिए।  
परिश्रम 1. \_\_\_\_\_ का द्वार है। मनुष्य 2. \_\_\_\_\_ के सहारे ही विकसित अवस्था तक पहुंचा है। उसी के सहारे उसने अन्न उपजाया। 3. \_\_\_\_\_ का विकास किया, जिसके सहारे आज यहाँ जगमगाती सभ्यता चल रही है। 4. \_\_\_\_\_ से किया गया परिश्रम ही परिश्रम कहलाता है। परिश्रम करने वाला मनुष्य सदा सुखी रहता है। परिश्रमी व्यक्ति का जीवन 5. \_\_\_\_\_ से पूर्ण होता है।

**SubQuestion No : 20**

**Q.20** रिक्त स्थान 5 की पूर्ति के लिए सबसे उपयुक्त विकल्प का चयन करें।

- Ans**
- 1. नम्रता
  - 2. दीनता
  - 3. स्वाभिमान
  - 4. सौम्यता

Question ID : 264330110889

Status : Not Answered

Chosen Option : --

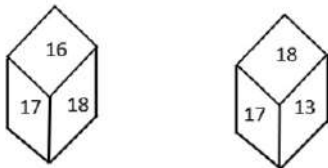
KD Job Updates

# Constable GD in CAPFs SSF Rifleman GD in Assam Rifles and Sepoy in NCB Examination 2022

Roll Number	KD Job Updates
Candidate Name	KD Job Updates
Venue Name	iON Digital Zone iDZ Austinpatti
Exam Date	30/01/2023
Exam Time	2:30 PM - 3:30 PM
Subject	Constable GD Examination 2022

## Section : Part-A-General Intelligence and Reasoning

Q.1 Two different positions of the same dice are shown having numbers 13 to 18. Find the number on the face opposite the face showing '16'.



- Ans
- 1. 17
  - 2. 15
  - 3. 13
  - 4. 14

Question ID : 26433085521  
Status : Answered  
Chosen Option : 3

Q.2 In a code language, 'You can go' is written as 'na re te', 'You come inside' is written as 'se te pe', 'He can go inside' is written as 're pe na ke'. What is the code for the word 'He' in that language?

- Ans
- 1. pe
  - 2. ke
  - 3. re
  - 4. na

Question ID : 26433068933  
Status : Answered  
Chosen Option : 2

Q.3 A # B means 'A is the brother of B'  
A @ B means 'A is the daughter of B'  
A & B means 'A is the husband of B'  
A % B means 'A is the wife of B'  
A \* B means 'A is the son of B'  
If P @ M % H # A @ G & B, then how is B related to P?

- Ans  1. Mother  
 2. Father's mother  
 3. Wife's mother  
 4. Sister

Question ID : 26433082535  
Status : Answered  
Chosen Option : 2

Q.4 Select the option that is related to the third number in the same way as the second number is related to the first number and sixth number is related to fifth number.  
9 : 56 :: 12 : ? :: 5 : 12

- Ans  1. 105  
 2. 110  
 3. 115  
 4. 120

Question ID : 26433067938  
Status : Answered  
Chosen Option : 2

Q.5 Which of the following letters will replace the question mark (?) and complete the following letter series?  
J, S, B, K, ?

- Ans  1. R  
 2. T  
 3. S  
 4. U

Question ID : 26433067295  
Status : Answered  
Chosen Option : 2

Q.6 Five people X, Y, Z, T and U are sitting in a straight row, facing north. There are only two people to the right of Z and only three people to the right of Y. There are only three people to the left of T. Who is sitting in the exact middle of the row?

- Ans  1. U  
 2. Y  
 3. Z  
 4. X

Question ID : 26433056044  
Status : Answered  
Chosen Option : 3

Q.7 Which of the following numbers will replace the question mark (?) in the given series?  
32, 35, ?, 47, 56, 67

- Ans
- 1. 41
  - 2. 42
  - 3. 39
  - 4. 40

Question ID : 26433069384  
Status : Answered  
Chosen Option : 4

Q.8 Which figure should replace the question mark (?) if the series were to be continued?

P	U	T	T	U	P	D	T	U	U	T	D	
A	L	C	C	A	L	P	C	A	A	P	C	?
D	E	N	E	N	D	L	E	N	E	N	L	

Ans

1.

L	U	T
D	A	P
C	E	N

2.

T	D	U
P	C	A
N	L	E

3.

D	T	U
C	A	P
N	L	E

4.

L	U	T
C	D	A
P	E	N

Question ID : 26433076632  
Status : Answered  
Chosen Option : 1

Q.9 Which option represents the correct order of the given words as they would appear in the English dictionary?

- 1 Garage
- 2 Garnish
- 3 Gourmet
- 4 Garland
- 5 Gastronomy

Ans  1. 1,4,2,5,3

2. 1,4,2,3,5

3. 1,2,4,3,5

4. 1,2,3,4,5

Question ID : 26433069280

Status : Answered

Chosen Option : 4

Q.10 Which two signs should be interchanged to make the below equation mathematically correct?

$$27 + 36 \times 32 - 8 \div 20 = 151$$

Ans  1. - and +

2. + and ×

3. ÷ and -

4. + and ÷

Question ID : 264330117545

Status : Answered

Chosen Option : 3

Q.11 Select the correct mirror image of the given combination when the mirror is placed at 'PQ' as shown below.

TE\$@D#VHM

P  
|  
Q

Ans

1. WHV#D@\$3T

2. MHV\$D#@#ET

3. MHV#D\$@#ET

4. WHV#D\$@#ET

Question ID : 26433082746

Status : Answered

Chosen Option : 3

Q.12 Select the option that is related to the fifth letter-cluster in the same way as the second letter-cluster is related to the first letter-cluster and the fourth letter-cluster is related to the third letter-cluster.

SCIENCE : RAHCMAD :: CAPTAIN : BYORZGM :: COUNTRY : ?

- Ans
- 1. BMLRPX
  - 2. ANSMRQX
  - 3. BMTLSPX
  - 4. BMTLSQX

Question ID : 26433082631  
Status : Answered  
Chosen Option : 3

Q.13 If '+' means '-', '-' means '+', 'x' means '÷', and '÷' means 'x'. Which of the following will be the value of the expression?

$45 \times 5 + 27 \div 81 - 3$

- Ans
- 1. 227
  - 2. 225
  - 3. 235
  - 4. 255

Question ID : 264330114192  
Status : Answered  
Chosen Option : 2

Q.14 'Intelligent' is related to 'Foolish' in the same way as 'Expert' is related to '\_\_\_\_\_'.  
(The words must be considered as meaningful English words and must not be related to each other based on the number of letters/number of consonants/vowels in the word)

- Ans
- 1. Amateur
  - 2. Scholar
  - 3. Professional
  - 4. Experienced

Question ID : 26433057752  
Status : Answered  
Chosen Option : 1

**Q.15** Three statements are given followed by three conclusions numbered I, II and III. Assuming the statements to be true, even if they seem to be at variance with commonly known facts, decide which of the conclusions logically follow(s) from the statements.

**Statements:**

All mirrors are combs.

All clips are combs.

All combs are brushes.

**Conclusions:**

I. All clips are brushes.

II. All mirrors are brushes.

III. Some brushes are clips.

- Ans**
- 1. Only conclusions I and II follow
  - 2. All conclusions follow
  - 3. Only conclusions I and III follow
  - 4. Only conclusions II and III follow

Question ID : 26433082301

Status : Answered

Chosen Option : 2

**Q.16** Which of the following numbers will replace the question mark (?) in the given series?  
19216, 9604, 4800, 2396, 1196, ?, 295

- Ans**
- 1. 596
  - 2. 564
  - 3. 594
  - 4. 584

Question ID : 26433085347

Status : Answered

Chosen Option : 3

**Q.17** Kirti, Suman, Shubh, Kanak, Pari, Charu, Shlok and Shivi are sitting around a square table facing the centre of the table. Some of them are sitting at the corners, while some are sitting at the exact centre of the sides. Kirti sits third to the left of Shubh. Kirti sits at one of the corners. Kanak sits second to the right of Pari. Pari does not sit at any of the corners. Pari is not an immediate neighbour of Kirti. Suman is an immediate neighbour of Charu. Suman does not sit at any of the middle of the sides. Only three people sit between Suman and Shlok from either sides.

Who sits third to the left of Shlok?

- Ans**
- 1. Shubh
  - 2. Suman
  - 3. Charu
  - 4. Shivi

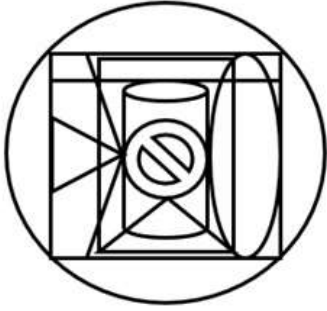
Question ID : 26433082286

Status : Answered

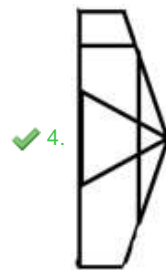
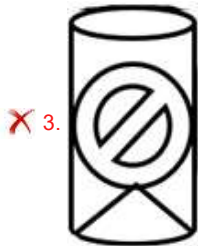
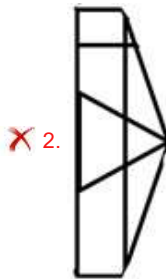
Chosen Option : 1



Q.18 Select the option figure which is embedded in the given figure. (Rotation is NOT allowed).



Ans



KD Job Updates

Question ID : 26433076582

Status : Answered

Chosen Option : 4

Q.19 Which of the following letter-clusters will replace the question mark (?) in the given series?

VCFS, RGJO, NKNK, ?, FSVC

- Ans
- 1. JOQH
  - 2. JORG
  - 3. KORH
  - 4. KOQG

Question ID : 26433076449  
Status : Answered  
Chosen Option : 2

Q.20 In a code language, 'he called them' is written as 'ka ba ma', 'i was called' is written as 'ga va ba' and 'he was hungry' is written as 'ka va da'. What is the code for the word 'hungry' in that language?

- Ans
- 1. ba
  - 2. da
  - 3. ga
  - 4. ma

Question ID : 26433076687  
Status : Answered  
Chosen Option : 2

Section : Part-B-General Knowledge and General awareness

Q.1 Who among the following became the Chief Minister of Tripura in May 2022?

- Ans
- 1. Arvind Giri
  - 2. Asish Das
  - 3. Malina Debnath
  - 4. Manik Saha

Question ID : 264330114911  
Status : Not Answered  
Chosen Option : --

Q.2 Meenakshisundaram Pillai was widely recognised for which form of dance?

- Ans
- 1. Kathakali
  - 2. Bharatnatyam
  - 3. Lavani
  - 4. Kuchipudi

Question ID : 264330115851  
Status : Answered  
Chosen Option : 2

Q.3 Which of the following programmes launched by the Ministry of Youth Affairs and Sports to promote sports culture in India has 12 verticals?

- Ans  1. Khelo India  
 2. TOPS  
 3. E-Pathshala  
 4. Fit India

Question ID : 26433086726  
Status : Not Answered  
Chosen Option : --

Q.4 \_\_\_\_\_ is the central bank of India.

- Ans  1. Reserve Bank of India  
 2. Bank of India  
 3. State Bank of India  
 4. Securities and Exchange Board of India

Question ID : 264330115332  
Status : Answered  
Chosen Option : 1

Q.5 The co-contribution of the Government of India under Atal Pension Yojana (APY) is available for \_\_\_\_\_.

- Ans  1. 60 years  
 2. 25 years  
 3. 10 years  
 4. 5 years

Question ID : 264330116197  
Status : Answered  
Chosen Option : 1

Q.6 Dhangari Gaja is a folk dance of \_\_\_\_\_.

- Ans  1. Assam  
 2. Maharashtra  
 3. Telangana  
 4. Uttarakhand

Question ID : 26433086635  
Status : Not Answered  
Chosen Option : --

Q.7 \_\_\_\_\_ five year plan of Government of India (2012–17) was India's last Five Year Plan.

- Ans
- 1. Eighth
  - 2. Fifth
  - 3. Twelfth
  - 4. Tenth

Question ID : 264330115377  
Status : Answered  
Chosen Option : 3

Q.8 The \_\_\_\_\_ is the site of the complete digestion of carbohydrates, proteins and fats.

- Ans
- 1. small intestine
  - 2. large intestine
  - 3. liver
  - 4. food pipe

Question ID : 264330115193  
Status : Answered  
Chosen Option : 1

Q.9 Two main objectives: 'removal of poverty' (Garibi Hatao) and 'attainment of self-reliance' was proposed in the \_\_\_\_\_ Five year plan.

- Ans
- 1. Seventh
  - 2. First
  - 3. Third
  - 4. Fifth

Question ID : 264330116146  
Status : Answered  
Chosen Option : 1

Q.10 Identify the writ by the virtue of which the Court directs a detained person to be brought before it to examine the legality of his detention.

- Ans
- 1. Mandamus
  - 2. Certiorari
  - 3. Habeas Corpus
  - 4. Quo-Warranto

Question ID : 26433054547  
Status : Answered  
Chosen Option : 3

Q.11 The Prarthana Samaj was established in \_\_\_\_\_ in Bombay.

Ans  1. 1867

2. 1865

3. 1869

4. 1871

Question ID : 264330115722

Status : Answered

Chosen Option : 2

Q.12 Who was the first captain of India Hockey Team in Olympics?

Ans  1. Lal Bokhari

2. Jaipal Singh Munda

3. Krishan Lal

4. Dhyan Chand

Question ID : 264330116265

Status : Answered

Chosen Option : 4

Q.13 Identify the element used in making solar cells.

Ans  1. Tungsten

2. Bronze

3. Silicon

4. Manganese

Question ID : 26433087841

Status : Not Answered

Chosen Option : --

Q.14 The line that separates crust from the mantle is known as \_\_\_\_\_

Ans  1. Andrij's discontinuity

2. Moho's discontinuity

3. Comp's discontinuity

4. Magma's discontinuity

Question ID : 26433092216

Status : Not Answered

Chosen Option : --

Q.15 \_\_\_\_\_ is used to manufacture fertilizers, synthetic fibers, plastics, adhesives, paints, and dyes.

Ans  1. nitric acid

2. soda ash

3. alkalis

4. sulphuric acid

Question ID : 264330115579

Status : Answered

Chosen Option : 1

Q.16 In which of the following states of India does the 'Sonepur Cattle Fair' take place?

- Ans  1. Bihar  
 2. Madhya Pradesh  
 3. Jharkhand  
 4. Uttar Pradesh

Question ID : 26433094882  
Status : Not Answered  
Chosen Option : --

Q.17 According to the report published by the National Survey of India, what is the literacy rate of India in 2022?

- Ans  1. 67.8%  
 2. 77.7%  
 3. 66.66%  
 4. 72.35%

Question ID : 264330116060  
Status : Not Answered  
Chosen Option : --

Q.18 Who became the Chief Minister of Goa after March 2022 elections?

- Ans  1. Laxmikant Parsekar  
 2. Digambar Kamat  
 3. Pramod Sawant  
 4. Manohar Parrikar

Question ID : 264330115035  
Status : Answered  
Chosen Option : 3

Q.19 The Great Stupa of Sanchi was built during the reign of which of the following kings?

- Ans  1. Chandragupta  
 2. Ashoka  
 3. Bindusara  
 4. Brihadratha

Question ID : 264330115449  
Status : Answered  
Chosen Option : 2

**Q.20 Respecting the national anthem and national flag is:**

- Ans
- 1. a fundamental right of every citizen
  - 2. an ordinary duty of every citizen
  - 3. a fundamental duty of every citizen
  - 4. a legal right of every citizen

Question ID : 26433090668  
Status : Answered  
Chosen Option : 3

Section : Part-C-Elementary Mathematics

**Q.1 On purchasing a cell phone in cash, a shopkeeper gives a discount of 7.5%. The marked price of the cell phone is Rs. 18000. What is the value of discount?**

- Ans
- 1. ₹1,200
  - 2. ₹1,350
  - 3. ₹1,250
  - 4. ₹1,300

Question ID : 26433091544  
Status : Answered  
Chosen Option : 2

**Q.2 Two trains of lengths 250 metres and 400 metres are running at speeds of 40 km/h and 30 km/h, respectively. If they are moving in the same direction, they will cross each other in \_\_\_\_\_ minutes.**

- Ans
- 1. 4.2
  - 2. 5.4
  - 3. 3.9
  - 4. 4.8

Question ID : 26433071262  
Status : Answered  
Chosen Option : 3

**Q.3 Vinay professes to sell rice at its cost price but uses the weight of 1600 gm in place of 2 kg. What is his percentage gain?**

- Ans
- 1. 28%
  - 2. 27%
  - 3. 25%
  - 4. 26%

Question ID : 26433080311  
Status : Answered  
Chosen Option : 3

Q.4 Susan can do the binding work of 100 books in 20 hours. Susan and Pragati together can do binding work of 600 books in 80 hours. In how much time Pragati alone can do the binding of 60 books?

- Ans  1. 24 hours  
 2. 15 hours  
 3. 12 hours  
 4. 6 hours

Question ID : 26433075925  
Status : Answered  
Chosen Option : 1

Q.5 A shopkeeper purchased wheat at Rs.20 per kg and rice at Rs.80 per kg. He sold 80 kg of wheat at Rs.22 per kg and 20 kg of wheat at Rs.21 per kg. Furthermore, he sold 40 kg of rice at Rs.95 per kg and 60 kg of rice at Rs.93 per kg. Find his total profit in this deal.

- Ans  1. Rs.940  
 2. Rs.1,560  
 3. Rs.720  
 4. Rs.890

Question ID : 26433075972  
Status : Answered  
Chosen Option : 2

Q.6 What is the value of  $100 \div 10 - [-2 + \{-9 + (3 - 6 \text{ of } 2)\}]$ ?

- Ans  1. 0  
 2. 20  
 3. 30  
 4. -6

Question ID : 26433075804  
Status : Answered  
Chosen Option : 3

Q.7 The in-radius of a triangle is 8 cm and the sum of the lengths of its sides is 60 cm. The area of the triangle (in  $\text{cm}^2$ ) is:

- Ans  1. 160  
 2. 140  
 3. 240  
 4. 260

Question ID : 26433081049  
Status : Not Answered  
Chosen Option : --



Q.8 3 solid cubes whose sides are 3 m, 4 m and 5 m, respectively, are melted to form a new cube. The total surface area of the new cube will be \_\_\_\_\_.

- Ans
- 1.  $116 m^2$
  - 2.  $115 m^2$
  - 3.  $216 m^2$
  - 4.  $215 m^2$

Question ID : 26433081296  
Status : Answered  
Chosen Option : 3

Q.9 The distance between the two Cities A and B is 800 km. A train covers the journey from A to B at 60 km per hour and returns to A at a uniform speed of 40 km per hour. Find the average speed of the train during the whole journey.

- Ans
- 1. 45 km/h
  - 2. 42 km/h
  - 3. 38 km/h
  - 4. 48 km/h

Question ID : 26433081011  
Status : Answered  
Chosen Option : 4

Q.10 The fourth proportion of  $\frac{1}{2}$ ,  $\frac{1}{3}$  and  $\frac{1}{4}$  is:

- Ans
- 1.  $\frac{1}{5}$
  - 2.  $\frac{1}{6}$
  - 3.  $\frac{1}{12}$
  - 4.  $\frac{2}{3}$

Question ID : 26433075492  
Status : Answered  
Chosen Option : 4

Q.11 After reducing 2 percent, a dining set costs Rs. 17640. Its original price is:

- Ans
- 1. Rs. 17900
  - 2. Rs. 18000
  - 3. Rs. 17800
  - 4. Rs. 17700

Question ID : 264330116766  
Status : Answered  
Chosen Option : 2

Q.12 The difference between the compound interest, compounding annually and the simple interest accrued on an amount of Rs.18,000 in 2 years was Rs.720. What was the rate of interest per annum?

- Ans
- 1. 25%
  - 2. 15%
  - 3. 20%
  - 4. 10%

Question ID : 26433073033  
Status : Answered  
Chosen Option : 3

Q.13 A, B, and C can complete a work in 15, 30, and 20 days respectively. A left the work 1 day before the work was completed and B left 2 days before the completion of the work. Find the number of days required to complete the whole work.

- Ans
- 1.  $88/7$  days
  - 2.  $75/9$  days
  - 3.  $68/9$  days
  - 4.  $84/9$  days

Question ID : 264330116881  
Status : Answered  
Chosen Option : 3

Q.14 A candidate who gets 50 percent marks fails by 100 marks but another candidate who got 78 percent marks gets 30 percent more than the passing marks. The maximum marks is:

- Ans
- 1. 1200
  - 2. 800
  - 3. 1500
  - 4. 1000

Question ID : 264330116801  
Status : Answered  
Chosen Option : 4

Q.15 A man can row 9 km/h in still water. In a stream which is flowing at 4 km/h, it takes total 9 hours to row to a place and back to the starting point. How far is the place from starting point?

- Ans
- 1. 32.5 km
  - 2. 30 km
  - 3. 25.2 km
  - 4. 48.5 km

Question ID : 26433065096  
Status : Not Answered  
Chosen Option : --

Q.16 Arun bought 3 shirts at the rate of Rs.175 per shirt and 6 trousers at the rate of Rs.250 per trouser. What is the average price of all the clothes?

- Ans
- 1. Rs.235
  - 2. Rs.240
  - 3. Rs.225
  - 4. Rs.220

Question ID : 26433075055  
Status : Answered  
Chosen Option : 3

Q.17 The population of a city increases at a rate of 2% for the first 2 years and then, decreases at a rate of 4% for the third year. What will be the population after 3 years if the present population of the city is 62,500?

- Ans
- 1. 62424
  - 2. 62400
  - 3. 63500
  - 4. 65424

Question ID : 26433066245  
Status : Not Answered  
Chosen Option : --

Q.18 What is the value of the expression  $x^2 - 9y^2$ , when  $x = 2.5$  and  $y = 0.5$ ?

- Ans
- 1. 4.25
  - 2. 2.25
  - 3. 4.5
  - 4. 4

Question ID : 26433085418  
Status : Answered  
Chosen Option : 4

Q.19 If  $(a - b) : (a + b) = 6 : 14$ , then find the ratio  $(4a + 3b) : (4a - 3b)$ .

- Ans
- 1. 11 : 7
  - 2. 15 : 7
  - 3. 13 : 7
  - 4. 10 : 7

Question ID : 26433080026  
Status : Not Answered  
Chosen Option : --

**Q.20** If incomes of Reeta and Geeta are Rs.1,600 and Rs.2,400 respectively, then by what percentage is the income of Geeta more than the income of Reeta?

- Ans
- 1. 40%
  - 2. 60%
  - 3. 30%
  - 4. 50%

Question ID : 26433075647  
Status : Not Answered  
Chosen Option : --

Section : Part-D-English

**Q.1** Identify and correct the INCORRECTLY spelt word in the given sentence

The flora and fauna of the Anaimalai hills are uneeque to its region.

- Ans
- 1. unique
  - 2. fona
  - 3. flora
  - 4. regian

Question ID : 26433072764  
Status : Answered  
Chosen Option : 1

**Q.2** Select the most appropriate meaning of the given idiom.

Called for

- Ans
- 1. To cast a spell
  - 2. To require something
  - 3. Brief visit Refresh
  - 4. Recollect

Question ID : 264330101380  
Status : Answered  
Chosen Option : 2

**Q.3** The following sentence has been split into four segments. Identify the segment that contains a grammatical error.

The coach said / that Shreyas / had practicing on / the lawn tennis court.

- Ans
- 1. the lawn tennis court
  - 2. that Shreyas
  - 3. The coach said
  - 4. had practicing on

Question ID : 26433086450  
Status : Answered  
Chosen Option : 4

Q.4 Select the most appropriate option that can substitute the underlined segment in the given sentence.

When someone waves a white flag, it signifies that they want to tolerate to the other party.

- Ans
- 1. wants to tolerate
  - 2. wants to interrupt
  - 3. wanted to interrogate
  - 4. want to surrender

Question ID : 26433096156  
Status : Answered  
Chosen Option : 4

Q.5 Select the most appropriate synonym of the underlined word in the given sentence.

Nothing equalled the grief I felt at the death of my pet cat.

- Ans
- 1. Freedom
  - 2. Bondage
  - 3. Fear
  - 4. Anguish

Question ID : 26433087918  
Status : Answered  
Chosen Option : 4

Q.6 Select the most appropriate option to fill in the blank.

After he finished eating his lunch, the boy sitting next to me \_\_\_\_\_ intently at me.

- Ans
- 1. turned
  - 2. stared
  - 3. shared
  - 4. came

Question ID : 26433073616  
Status : Answered  
Chosen Option : 2

Q.7 Select the most appropriate option that can substitute the underlined segment in the given sentence.

The melodious song reminded Revathi on the nostalgic moments of her past.

- Ans
- 1. by the nostalgic moments in
  - 2. at the nostalgic moments of
  - 3. of the nostalgic moments at
  - 4. of the nostalgic moments of

Question ID : 26433089309  
Status : Answered  
Chosen Option : 4

**Q.8** Select the most appropriate meaning of the given idiom.

**It takes two to tango**

- Ans  1. Two people crossing the street together  
 2. A conflict where both people are at fault  
 3. Diagonally across  
 4. Two people are needed for any game

Question ID : 26433073717  
Status : Answered  
Chosen Option : 2

**Q.9** Select the most appropriate synonym of the given word.

**Alight**

- Ans  1. Commence  
 2. Earn  
 3. Enlighten  
 4. Descend

Question ID : 26433073462  
Status : Answered  
Chosen Option : 4

**Q.10** Select the most appropriate ANTONYM of the word given in brackets to fill in the blank.

The boys are very (hyper) \_\_\_\_\_ today.

- Ans  1. naughty  
 2. hungry  
 3. tranquil  
 4. good

Question ID : 26433090383  
Status : Answered  
Chosen Option : 3

**Q.11** Select the most appropriate ANTONYM of the given word.

**Savage**

- Ans  1. Tame  
 2. Robust  
 3. Wild  
 4. Bold

Question ID : 26433072205  
Status : Answered  
Chosen Option : 1

Q.12 Select the most appropriate ANTONYM of the given word.

Endurance

- Ans  1. Patience  
 2. Indolence  
 3. Persistence  
 4. Tolerance

Question ID : 26433072669  
Status : Answered  
Chosen Option : 2

Q.13 Select the correct pair of homonyms to fill in the blanks.

The river \_\_\_\_\_ provide a reserve \_\_\_\_\_ for minerals that enrich the soil's fertility.

- Ans  1. right, right  
 2. banks, bank  
 3. band, band  
 4. quail, quail

Question ID : 26433061049  
Status : Answered  
Chosen Option : 2

Q.14 Select the most appropriate synonym of the given word to fill in the blank in the sentence.

Rigid

The new education scenario is not \_\_\_\_\_ but practical.

- Ans  1. popular  
 2. dominating  
 3. flexible  
 4. stiff

Question ID : 26433060550  
Status : Answered  
Chosen Option : 4

Q.15 Select the INCORRECTLY spelt word.

- Ans  1. Domicile  
 2. Trendy  
 3. Vacillate  
 4. Vaccuum

Question ID : 26433074000  
Status : Answered  
Chosen Option : 4

**Comprehension:**

In the following passage, some words have been deleted. Read the passage carefully and select the most appropriate option to fill in each blank.

The room looked as though a (1) \_\_\_\_\_ had swept through it. The storm had blown (2) \_\_\_\_\_ the French doors during the night, and the wind and the rain had wreaked havoc, (3) \_\_\_\_\_ everything before it. A few (4) \_\_\_\_\_ pages of the report lay on the wet rug, but the rest of the pages had obviously been carried (5) \_\_\_\_\_ by the wind.

**SubQuestion No : 16**

**Q.16 Select the most appropriate option to fill in blank number 1.**

- Ans  1. spring  
 2. hurricane  
 3. dream  
 4. broom

Question ID : 26433070784  
Status : Answered  
Chosen Option : 2

**Comprehension:**

In the following passage, some words have been deleted. Read the passage carefully and select the most appropriate option to fill in each blank.

The room looked as though a (1) \_\_\_\_\_ had swept through it. The storm had blown (2) \_\_\_\_\_ the French doors during the night, and the wind and the rain had wreaked havoc, (3) \_\_\_\_\_ everything before it. A few (4) \_\_\_\_\_ pages of the report lay on the wet rug, but the rest of the pages had obviously been carried (5) \_\_\_\_\_ by the wind.

**SubQuestion No : 17**

**Q.17 Select the most appropriate option to fill in blank number 2.**

- Ans  1. clean  
 2. open  
 3. broke  
 4. closed

Question ID : 26433070785  
Status : Answered  
Chosen Option : 2

**Comprehension:**

In the following passage, some words have been deleted. Read the passage carefully and select the most appropriate option to fill in each blank.

The room looked as though a (1) \_\_\_\_\_ had swept through it. The storm had blown (2) \_\_\_\_\_ the French doors during the night, and the wind and the rain had wreaked havoc, (3) \_\_\_\_\_ everything before it. A few (4) \_\_\_\_\_ pages of the report lay on the wet rug, but the rest of the pages had obviously been carried (5) \_\_\_\_\_ by the wind.

**SubQuestion No : 18**

**Q.18 Select the most appropriate option to fill in blank number 3.**

- Ans  1. binding  
 2. sharing  
 3. saving  
 4. scattering

Question ID : 26433070786  
Status : Answered  
Chosen Option : 4



**Comprehension:**

In the following passage, some words have been deleted. Read the passage carefully and select the most appropriate option to fill in each blank.

The room looked as though a (1) \_\_\_\_\_ had swept through it. The storm had blown (2) \_\_\_\_\_ the French doors during the night, and the wind and the rain had wreaked havoc, (3) \_\_\_\_\_ everything before it. A few (4) \_\_\_\_\_ pages of the report lay on the wet rug, but the rest of the pages had obviously been carried (5) \_\_\_\_\_ by the wind.

**SubQuestion No : 19**

**Q.19** Select the most appropriate option to fill in blank number 4.

- Ans  1. lose  
 2. loose  
 3. read  
 4. tight

Question ID : 26433070787

Status : Answered

Chosen Option : 2

**Comprehension:**

In the following passage, some words have been deleted. Read the passage carefully and select the most appropriate option to fill in each blank.

The room looked as though a (1) \_\_\_\_\_ had swept through it. The storm had blown (2) \_\_\_\_\_ the French doors during the night, and the wind and the rain had wreaked havoc, (3) \_\_\_\_\_ everything before it. A few (4) \_\_\_\_\_ pages of the report lay on the wet rug, but the rest of the pages had obviously been carried (5) \_\_\_\_\_ by the wind.

**SubQuestion No : 20**

**Q.20** Select the most appropriate option to fill in blank number 5.

- Ans  1. over  
 2. nearer  
 3. away  
 4. of

Question ID : 26433070788

Status : Answered

Chosen Option : 3

Section : Part-D-Hindi

**Q.1** निम्नलिखित मुहावरे के उचित अर्थ का चयन कीजिए-  
अढ़ाई दिन की हुकूमत

- Ans  1. सामान्य शासन  
 2. कुछ दिनों की शानोशौकत  
 3. लंबी हुकूमत  
 4. राज्य के बाहर शासन करना

Question ID : 26433065885

Status : Not Answered

Chosen Option : --

Q.2 आज अमावस्या की रात है।  
उपरोक्त वाक्य में रेखांकित शब्द के विलोम शब्द का चयन विकल्पों में से कीजिए।

- Ans  1. काली  
 2. पूर्णिमा  
 3. एकादशी  
 4. पूर्ण

Question ID : 26433079639  
Status : Not Answered  
Chosen Option : --

Q.3 'टाईप करने की कला' वाक्यांश के लिए इनमें से उपयुक्त शब्द कौन-सा है?

- Ans  1. टकसाल  
 2. टंकित  
 3. टिकाऊ  
 4. टंकण

Question ID : 26433066892  
Status : Not Answered  
Chosen Option : --

Q.4 निम्न में से किस वाक्य में 'खून' के सही अनेकार्थी शब्द का प्रयोग हुआ है?

- Ans  1. कल विजय की हत्या हो गई।  
 2. विकास वाचनालय में पढ़ रहा था।  
 3. महेश ने शहर से पलायन किया।  
 4. यह लाल फूल अत्यंत सुन्दर है।

Question ID : 26433085144  
Status : Not Answered  
Chosen Option : --

Q.5 दिए गये वाक्यांश के लिए सार्थक शब्द बताइए - 'इतिहास को जानने वाला'

- Ans  1. ऐतिहासिक  
 2. इतिहासिक  
 3. इतिहासज्ञ  
 4. इतिहासकार

Question ID : 26433062588  
Status : Not Answered  
Chosen Option : --

Q.6 'दिहोरा पीटना' मुहावरे का क्या अर्थ है?

- Ans
- 1. जोर-जोर से बात करना
  - 2. ढोल बजाना
  - 3. बात करना
  - 4. प्रचार करना

Question ID : 26433066804  
Status : Not Answered  
Chosen Option : --

Q.7 संयुक्त वाक्य - 'ये भी अच्छे हैं और वे भी अच्छे हैं।' निम्नलिखित विकल्पों में से इस वाक्य के लिए कौन सा एक उचित सरल वाक्य होगा?

- Ans
- 1. सब बुरे हैं।
  - 2. यह अच्छे हैं वे अच्छे हैं।
  - 3. सब अच्छे हैं।
  - 4. सब अच्छे हैं और बुरे हैं।

Question ID : 26433062442  
Status : Not Answered  
Chosen Option : --

Q.8 निम्नलिखित वाक्य में रेखांकित एकार्थी शब्दों के उपयुक्त अर्थ बताइए।  
बहुत से लोगों का सकल जीवन परमार्थ को समर्पित होता है, जिससे समाज शकल नहीं हो पाता।

- Ans
- 1. एक- टुकड़ा
  - 2. पूरा- साथ
  - 3. कुछ भाग- आधा
  - 4. संपूर्ण- टुकड़ा

Question ID : 26433091328  
Status : Not Answered  
Chosen Option : --

Q.9 निम्नलिखित विकल्पों में से किस एक वाक्य में क्रिया सम्बन्धी अशुद्धि है?

- Ans
- 1. उसने नौकरी छोड़ दिया।
  - 2. गाड़ी चलती है।
  - 3. तुम देर तक सोते हो।
  - 4. बर्फ पिघल रही है।

Question ID : 26433062945  
Status : Not Answered  
Chosen Option : --

Q.10 प्रभावी शिक्षकों का गुच्छा आ रहा है।  
उपरोक्त वाक्य के किस संज्ञा पद में त्रुटि है?

- Ans
- 1. शिक्षकों का
  - 2. प्रभावी
  - 3. आ रहा है
  - 4. गुच्छा

Question ID : 26433063026  
Status : Not Answered  
Chosen Option : --

Q.11 निम्नलिखित में से शुद्ध वाक्य कौन सा है?

- Ans
- 1. उसने पच आम खरीदे।
  - 2. उसने पांच आम खरीदे।
  - 3. उसने पांच अम खरीदे।
  - 4. उसने पांच आम खरीद।

Question ID : 26433066832  
Status : Not Answered  
Chosen Option : --

Q.12 'हित न चाहने वाला' वाक्यांश के लिए एक शब्द क्या होगा?

- Ans
- 1. हितैषी
  - 2. परमार्थी
  - 3. हितविहीन
  - 4. अनहित

Question ID : 26433070064  
Status : Not Answered  
Chosen Option : --

Q.13 निम्नलिखित वाक्य में रेखांकित खंड के स्थान पर प्रयुक्त होने वाले सबसे उपयुक्त विकल्प का चयन कीजिए।  
मैं बुढ़ापे की और बढ़ रहा हूँ।

- Ans
- 1. जगह
  - 2. और
  - 3. साथ
  - 4. तथा

Question ID : 26433079669  
Status : Not Answered  
Chosen Option : --

Q.14 विकल्पों में दिए गए किस वाक्य में निम्न शब्द के पर्यायवाची शब्द प्रयोग हुआ है?  
कमल

- Ans  1. तालाब में कटु खिला है।  
 2. तालाब में सरोज खिला है।  
 3. तालाब में पयोद खिला है।  
 4. तालाब में मरु खिला है।

Question ID : 26433091215  
Status : Not Answered  
Chosen Option : --

Q.15 उसको मुंहमांगी दाम मिलेगा।  
उपरोक्त वाक्य के किस शब्द में वर्तनीगत अशुद्धि है?

- Ans  1. उसको  
 2. दाम  
 3. मुंहमांगी  
 4. मिलेगा

Question ID : 26433085061  
Status : Not Answered  
Chosen Option : --

**Comprehension:**

निम्नलिखित गद्यांश में कुछ शब्दों को हटा दिया गया है। दिए गए विकल्पों की सहायता से रिक्त स्थानों की पूर्ति कीजिए। प्रत्येक संख्या के लिए सबसे उपयुक्त विकल्प का चयन करें।  
'पुस्तक' तथा 'आलय' इन दो शब्दों से मिलकर 'पुस्तकालय' 1. \_\_\_\_\_ बना है। आलय शब्द 2. \_\_\_\_\_ का सूचक है। पुस्तकालय वह स्थान है जहाँ पुस्तकों को 3. \_\_\_\_\_ जाता है। पुस्तक ज्ञान का 4. \_\_\_\_\_ होती है। अतः पुस्तकालय वह स्थान है जहाँ से पुस्तकें लेकर तथा उन्हें पढ़कर हम 5. \_\_\_\_\_ बनते हैं।

SubQuestion No : 16

Q.16 रिक्त स्थान 1 की पूर्ति के लिए सबसे उपयुक्त विकल्प का चयन कीजिए।

- Ans  1. शब्द  
 2. कक्ष  
 3. वर्ग  
 4. दुर्लभ

Question ID : 264330110963  
Status : Not Answered  
Chosen Option : --

**Comprehension:**

निम्नलिखित गद्यांश में कुछ शब्दों को हटा दिया गया है। दिए गए विकल्पों की सहायता से रिक्त स्थानों की पूर्ति कीजिए। प्रत्येक संख्या के लिए सबसे उपयुक्त विकल्प का चयन करें।

'पुस्तक' तथा 'आलय' इन दो शब्दों से मिलकर 'पुस्तकालय' 1. \_\_\_\_\_ बना है। आलय शब्द 2. \_\_\_\_\_ का सूचक है। पुस्तकालय वह स्थान है जहाँ पुस्तकों को 3. \_\_\_\_\_ जाता है। पुस्तक ज्ञान का 4. \_\_\_\_\_ होती है। अतः पुस्तकालय वह स्थान है जहाँ से पुस्तकें लेकर तथा उन्हें पढ़कर हम 5. \_\_\_\_\_ बनते हैं।

**SubQuestion No : 17**

Q.17 रिक्त स्थान 2 की पूर्ति के लिए सबसे उपयुक्त विकल्प का चयन कीजिए।

- Ans  1. घर  
 2. ज्ञान  
 3. जानकारी  
 4. पुस्तकों

Question ID : 264330110964  
Status : Not Answered  
Chosen Option : --

**Comprehension:**

निम्नलिखित गद्यांश में कुछ शब्दों को हटा दिया गया है। दिए गए विकल्पों की सहायता से रिक्त स्थानों की पूर्ति कीजिए। प्रत्येक संख्या के लिए सबसे उपयुक्त विकल्प का चयन करें।

'पुस्तक' तथा 'आलय' इन दो शब्दों से मिलकर 'पुस्तकालय' 1. \_\_\_\_\_ बना है। आलय शब्द 2. \_\_\_\_\_ का सूचक है। पुस्तकालय वह स्थान है जहाँ पुस्तकों को 3. \_\_\_\_\_ जाता है। पुस्तक ज्ञान का 4. \_\_\_\_\_ होती है। अतः पुस्तकालय वह स्थान है जहाँ से पुस्तकें लेकर तथा उन्हें पढ़कर हम 5. \_\_\_\_\_ बनते हैं।

**SubQuestion No : 18**

Q.18 रिक्त स्थान 3 की पूर्ति के लिए सबसे उपयुक्त विकल्प का चयन कीजिए।

- Ans  1. रखा  
 2. पढ़ना  
 3. लाभ  
 4. देखा

Question ID : 264330110965  
Status : Not Answered  
Chosen Option : --

**Comprehension:**

निम्नलिखित गद्यांश में कुछ शब्दों को हटा दिया गया है। दिए गए विकल्पों की सहायता से रिक्त स्थानों की पूर्ति कीजिए। प्रत्येक संख्या के लिए सबसे उपयुक्त विकल्प का चयन करें।

'पुस्तक' तथा 'आलय' इन दो शब्दों से मिलकर 'पुस्तकालय' 1. \_\_\_\_\_ बना है। आलय शब्द 2. \_\_\_\_\_ का सूचक है। पुस्तकालय वह स्थान है जहाँ पुस्तकों को 3. \_\_\_\_\_ जाता है। पुस्तक ज्ञान का 4. \_\_\_\_\_ होती है। अतः पुस्तकालय वह स्थान है जहाँ से पुस्तकें लेकर तथा उन्हें पढ़कर हम 5. \_\_\_\_\_ बनते हैं।

**SubQuestion No : 19**

Q.19 रिक्त स्थान 4 की पूर्ति के लिए सबसे उपयुक्त विकल्प का चयन कीजिए।

- Ans  1. कार्य  
 2. भंडार  
 3. अनिवार्य  
 4. शुल्क

Question ID : 264330110966  
Status : Not Answered  
Chosen Option : --

**Comprehension:**

निम्नलिखित गद्यांश में कुछ शब्दों को हटा दिया गया है। दिए गए विकल्पों की सहायता से रिक्त स्थानों की पूर्ति कीजिए। प्रत्येक संख्या के लिए सबसे उपयुक्त विकल्प का चयन करें।

'पुस्तक' तथा 'आलय' इन दो शब्दों से मिलकर 'पुस्तकालय' 1. \_\_\_\_\_ बना है। आलय शब्द 2. \_\_\_\_\_ का सूचक है। पुस्तकालय वह स्थान है जहाँ पुस्तकों को 3. \_\_\_\_\_ जाता है। पुस्तक ज्ञान का 4. \_\_\_\_\_ होती है। अतः पुस्तकालय वह स्थान है जहाँ से पुस्तकें लेकर तथा उन्हें पढ़कर हम 5. \_\_\_\_\_ बनते हैं।

**SubQuestion No : 20**

**Q.20** रिक्त स्थान 5 की पूर्ति के लिए सबसे उपयुक्त विकल्प का चयन कीजिए।

- Ans**
- 1. पढ़ाकू
  - 2. सामान्य
  - 3. प्रत्यक्ष
  - 4. ज्ञानी

Question ID : 264330110967

Status : Not Answered

Chosen Option : --

KD Job Updates

## Constable GD in CAPFs SSF Rifleman GD in Assam Rifles and Sepoy in NCB Examination 2022

Roll Number	KD Job Updates
Candidate Name	KD Job Updates
Venue Name	Dr. Ghanshyam Singh College Of Education
Exam Date	30/01/2023
Exam Time	5:15 PM - 6:15 PM
Subject	Constable GD Examination 2022

Section : Part-A-General Intelligence and Reasoning

Q.1 Six students Tanya, Roop, Johar, Soma, Manvi and Deep are sitting around a circular table facing the centre. Soma is sitting second to the right of Deep. Soma is an immediate neighbour of both Manvi and Johar. Roop is sitting second to the left of Johar. Deep is an immediate neighbour of both Johar and Roop. Who is the immediate neighbour of Tanya and Deep?

- Ans
- 1. Soma
  - 2. Roop
  - 3. Manvi
  - 4. Johar

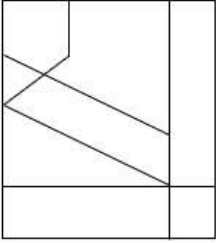
Question ID : 26433069128

Status : Answered

Chosen Option : 2

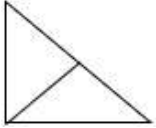


Q.2 Select the option figure which is embedded in the given figure. (Rotation is NOT allowed)

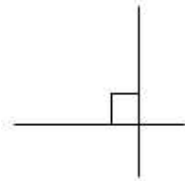


Ans

✗ 1.



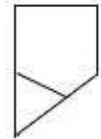
✗ 2.



✗ 3.



✓ 4.



Question ID : 26433069352  
Status : Answered  
Chosen Option : 4

Q.3 Which two numbers(not digits) and two signs should be interchanged to make the given equation correct?  
 $100 \times 5 - 110 \div 2 + 12 = 210$

Ans ✗ 1. 2 and 12;  $\times$  and  $+$

✓ 2. 5 and 2;  $+$  and  $-$

✗ 3. 2 and 12;  $\div$  and  $\times$

✗ 4. 12 and 5;  $\times$  and  $-$

Question ID : 26433092745  
Status : Not Attempted and Marked For Review  
Chosen Option : --

Q.4 A @ B means 'A is the husband of B'.  
 A & B means 'A is the mother of B'.  
 A # B means 'A is the daughter of B'.  
 A % B means 'A is the sister of B'.  
 If R # L % G @ V & P, then how is L related to P?

- Ans  1. Mother-in-law or father-in-law  
 2. Father's sister  
 3. Mother's sister  
 4. Grandparent

Question ID : 26433069617  
 Status : Answered  
 Chosen Option : 2

Q.5 Select the option that is related to the fifth letter-cluster in the same way as the second letter-cluster is related to the first letter-cluster and the fourth letter-cluster is related to the third letter-cluster.  
 HALF: SFOT :: DAMP: WFNJ :: AREA: ?

- Ans  1. ZIVZ  
 2. YMJZ  
 3. ZWVY  
 4. FWJY

Question ID : 26433057490  
 Status : Answered  
 Chosen Option : 1

Q.6 Select the correct mirror image of the given figure when the mirror is placed at MN as shown below.

F G R z c 6 n W  
 M ————— N

- Ans  1. F G R z c 6 n W  
 2. F G R z c 6 n W  
 3. W n 6 c z R G F  
 4. F G R z c 6 n W

Question ID : 26433080800  
 Status : Answered  
 Chosen Option : 1

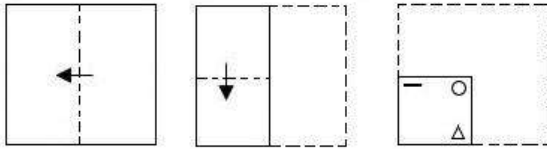
**Q.7** Select the option that is related to the third word in the same way as the second word is related to the first word (The words must be considered as meaningful English words and must not be related to each other based on the number of letters/consonants/vowels in the word).

Cosmology: Universe :: Morphology : \_\_\_\_\_

- Ans
- 1. Radio
  - 2. Sturcture Of Living Things
  - 3. Function
  - 4. Trees

Question ID : 26433078826  
 Status : Answered  
 Chosen Option : 2

**Q.8** A paper is folded and cut as shown below. How will it appear when unfolded?



- Ans
- 1.
  - 2.
  - 3.
  - 4.

Question ID : 26433090088  
 Status : Answered  
 Chosen Option : 1

Q.9 In a certain code language, 'DESIGN' is written as 'TFEPIK' and 'DESIRE' is written as 'TFEGTK'. How will 'DEVICE' be written as in that language?

- Ans
- 1. VEDGEK
  - 2. WFEGEK
  - 3. ECIVED
  - 4. VEDECI

Question ID : 26433090041

Status : Not Attempted and  
Marked For Review

Chosen Option : --

Q.10 Six people A, B, C, D, E and F are sitting around a circular table, facing the centre. C is sitting second to the left of E. B is the immediate neighbour of E and F. A is sitting second to the right of B. Who is sitting between B and A when considered from the right of B?

- Ans
- 1. D
  - 2. E
  - 3. C
  - 4. F

Question ID : 26433081516

Status : Answered

Chosen Option : 4

Q.11 In a certain code language, FLAME is written as 'LPGQK', and BURNT is written as 'HYXRZ'. How will 'FRIED' be written in the same code language?

- Ans
- 1. LVOJK
  - 2. LVPIJ
  - 3. LWPIJ
  - 4. LVOIJ

Question ID : 26433067991

Status : Answered

Chosen Option : 4

Q.12 Select the option that represents the correct order of the given words as they would appear in an English dictionary.

1. HALOGEN
2. HAIRY
3. HAIKU
4. HAND
5. HAMPER
6. HANK

- Ans
- 1. 3, 2, 1, 5, 4, 6
  - 2. 4, 3, 1, 2, 5, 6
  - 3. 2, 3, 1, 5, 4, 6
  - 4. 3, 1, 2, 4, 5, 6

Question ID : 26433079378

Status : Answered

Chosen Option : 1

**Q.13** Select the figure from among the given options that can replace the question mark (?) in the following series.

△	↑	=	
☆	□	X	
=	☆	□	?
↑	=	☆	

Ans

✗ 1.

☆
X
◇
=

✓ 2.

☆
◇
X
□

✗ 3.

☆
=
X
□

✗ 4.

☆
X
◇
□

KD Job Updates

Question ID : 26433080758  
 Status : Answered  
 Chosen Option : 2

**Q.14** Which number will replace the question mark (?) in the following series?  
 182, 132, 90, 56, ?, 12, 2

- Ans
- ✗ 1. 24
  - ✗ 2. 52
  - ✗ 3. 36
  - ✓ 4. 30

Question ID : 26433068474  
 Status : Answered  
 Chosen Option : 4

Q.15 Which of the following terms will replace the question mark (?) in the given series?  
?, CSAT, BPVM, AMQF, ZJLY

- Ans
- 1. FVDA
  - 2. DVFA
  - 3. VDFB
  - 4. AVRF

Question ID : 26433068988  
Status : Answered  
Chosen Option : 2

Q.16 Which two signs should be interchanged to make the below equation mathematically correct?

$$64 - 16 \times 25 \div 80 + 10 = 59$$

- Ans
- 1. + and -
  - 2. + and  $\times$
  - 3. - and +
  - 4.  $\times$  and -

Question ID : 264330117508  
Status : Answered  
Chosen Option : 3

Q.17 Select the letter-cluster from among the given options that can replace the question mark (?) in the following series.  
WGVJ, CCBP, IYHV, ?, UQTH

- Ans
- 1. UMBR
  - 2. OUNB
  - 3. OMNB
  - 4. UOME

Question ID : 26433074736  
Status : Answered  
Chosen Option : 2

Q.18 In this question, three statements are given, followed by two conclusions numbered I and II. Assuming the statements to be true, even if they seem to be at variance with commonly known facts, decide which of the conclusions logically follows/follow from the statements.

Statements:

Some chairs are bedsheets.

All cots are chairs.

All pillows are bedsheets.

Conclusions:

I. Some pillows are chairs.

II. Some cots are bedsheets.

- Ans
- 1. Both conclusions I and II follow.
  - 2. Only conclusion II follows.
  - 3. Only conclusion I follows.
  - 4. Neither conclusion I nor II follows.

Question ID : 26433070389  
Status : Answered  
Chosen Option : 4

Q.19 Which of the following numbers will replace the question mark (?) in the given series?  
0, 7, 26, 63, ?

- Ans  1. 120  
 2. 81  
 3. 124  
 4. 69

Question ID : 26433082734  
Status : Answered  
Chosen Option : 3

Q.20 Select the set in which the numbers are related in the same way as are the numbers of the following set.

(NOTE : Operations should be performed on the whole numbers, without breaking down the numbers into its constituent digits. E.g. 13 – Operations on 13 such as adding /subtracting/multiplying etc. to 13 can be performed. Breaking down 13 into 1 and 3 and then performing mathematical operations on 1 and 3 is NOT allowed)  
(10, 300, 40)  
(12, 192, 20)

- Ans  1. (16, 226, 30)  
 2. (17, 156, 12)  
 3. (20, 160, 10)  
 4. (18, 228, 20)

Question ID : 26433076483  
Status : Not Attempted and Marked For Review  
Chosen Option : --

Section : Part-B-General Knowledge and General awareness

Q.1 Which of the following is a professional table tennis player?

- Ans  1. Parupalli Kashyap  
 2. Aparna Popat  
 3. Saurav Ghosal  
 4. Manika Batra

Question ID : 264330115947  
Status : Answered  
Chosen Option : 4

Q.2 Ruler of which dynasty built the Kandariya Mahadeva temple in 999?

- Ans  1. Sunga  
 2. Chandela  
 3. Nanda  
 4. Gupta

Question ID : 264330106593  
Status : Answered  
Chosen Option : 2

**Q.3 Which article of Indian constitution is related with Protection of interests of minorities?**

- Ans
- 1. 33
  - 2. 31
  - 3. 27
  - 4. 29

Question ID : 26433089945  
Status : Answered  
Chosen Option : 3

**Q.4 The prime themes of Kathak are tied to which of the following cults of Hinduism?**

- Ans
- 1. Shaivism
  - 2. Buddhism
  - 3. Shaktism
  - 4. Vaishnavism

Question ID : 26433086627  
Status : Answered  
Chosen Option : 1

**Q.5 Cycas and Pinus are which type of plants?**

- Ans
- 1. Pteridophyta
  - 2. Gymnosperms
  - 3. Thallophyta
  - 4. Angiosperms

Question ID : 264330115206  
Status : Not Attempted and Marked For Review  
Chosen Option : --

**Q.6 What helps in the cultivation of rabi crops?**

- Ans
- 1. Mahawat
  - 2. Southeast trade winds
  - 3. Westerly jet streams
  - 4. Northwest winds

Question ID : 26433087884  
Status : Answered  
Chosen Option : 4



Q.7 The Finance Commission of India submits its report to \_\_\_\_\_.

- Ans  1. The head of NITI Ayog  
 2. The Finance minister of India  
 3. The President of India  
 4. The Prime minister of India

Question ID : 26433090672  
Status : Answered  
Chosen Option : 2

Q.8 Which state has the lowest sex ratio as per the Census 2011?

- Ans  1. Maharashtra  
 2. Rajasthan  
 3. Bihar  
 4. Haryana

Question ID : 264330116032  
Status : Answered  
Chosen Option : 4

Q.9 Which of the following is an output of farming?

- Ans  1. Air  
 2. crops  
 3. water  
 4. machines

Question ID : 264330115542  
Status : Answered  
Chosen Option : 2

Q.10 Which Union Minister of State addressed the inaugural function of 4th National Young Superintendents of Police Conference and Police Expo in September 2022?

- Ans  1. Bishweswar Tudu  
 2. Arjun Munda  
 3. Nityanand Rai  
 4. Meenakshi Lekhi

Question ID : 264330114961  
Status : Not Answered  
Chosen Option : --

Q.11 A microfinance loan is defined as a collateral-free loan given to a household having annual household income up to Rs. \_\_\_\_\_.

- Ans  1. 300000  
 2. 400000  
 3. 500000  
 4. 600000

Question ID : 264330115295  
Status : Answered  
Chosen Option : 2

Q.12 \_\_\_\_\_ (NRLM) is a poverty alleviation project implemented by the Government of India.

- Ans  1. National Rural Living Mission  
 2. National Rural Lands Mission  
 3. National Ration Livelihood Mission  
 4. National Rural Livelihood Mission

Question ID : 264330116169  
Status : Answered  
Chosen Option : 4

Q.13 Which is the last Five year plan that was put to effect in India?

- Ans  1. Thirteenth  
 2. Eleventh  
 3. Twelfth  
 4. Tenth

Question ID : 264330116122  
Status : Not Answered  
Chosen Option : --

Q.14 Gaddam Padmaja Reddy won Padma Shri for which dance form?

- Ans  1. Kathakali  
 2. Lavani  
 3. Bharatnatyam  
 4. Kuchipudi

Question ID : 264330115823  
Status : Answered  
Chosen Option : 3

**Q.15 Who has been appointed as the Director of the Forest Research Institute in March 2022?**

- Ans**  1. Renu Singh  
 2. Vikas Rana  
 3. Arun Singh Rawat  
 4. Ajay Thakur

Question ID : 264330114998  
Status : Answered  
Chosen Option : 4

**Q.16 Captain Roop Singh Stadium is located in which of the following city?**

- Ans**  1. Jabalpur  
 2. Indore  
 3. Gwalior  
 4. Jaipur

Question ID : 264330116251  
Status : Not Answered  
Chosen Option : --

**Q.17 Why was the year 1757 an important year for the English East India Company in India?**

- Ans**  1. In 1757 the English East India Company got control over Hyderabad by defeating the Nizam in the Battle of Plassey.  
 2. In 1757 the English East India Company got control over Madras by defeating Nawab Siraj-ud-daulah in the Battle of Plassey.  
 3. In 1757 the English East India Company got control over Oudh by defeating Nawab Siraj-ud-daulah in the Battle of Berar.  
 4. In 1757 the English East India Company got control over Bengal by defeating Nawab Siraj-ud-daulah in the Battle of Plassey.

Question ID : 26433091464  
Status : Answered  
Chosen Option : 4

**Q.18 Which among the following festivals is also known as Dala Puja devoted to worshipping the sun is traditionally celebrated by the people of Bihar?**

- Ans**  1. Bihula  
 2. Madhushravani  
 3. Chhath Puja  
 4. Sama Chakeva

Question ID : 264330115126  
Status : Answered  
Chosen Option : 3

Q.19 M.S.Swaminathan (father of Green Revolution in India), was \_\_\_\_\_ by profession.

- Ans  1. scientist  
 2. police officer  
 3. army officer  
 4. judge

Question ID : 264330115423  
Status : Answered  
Chosen Option : 1

Q.20 Which among the following statements is incorrect?

- Ans  1. The melting point of ice decreases with decrease in pressure.  
 2. Spherical Shape of liquid droplets is due to the property of surface tension in liquids.  
 3. Evaporation takes place only on the surface of liquids.  
 4. Liquids at high altitudes boil at lower temperature due to low atmospheric pressure at high altitudes.

Question ID : 264330115180  
Status : Answered  
Chosen Option : 3

Section : Part-C-Elementary Mathematics

Q.1 A man spends 87% of his income. His income increased by 18% and he increased his expenditure by 17%. His savings will then be increased by : (Consider up to two decimals only)

- Ans  1. 29.2%  
 2. 24.69%  
 3. 18.54%  
 4. 27.32%

Question ID : 26433076266  
Status : Answered  
Chosen Option : 2

Q.2 Mohan walks on a circular track 1500 metre in circumference. If the speed of Mohan is 75metre/min, then what is the time taken by Mohan to cover one round of track?

- Ans  1. 18 min  
 2. 20 min  
 3. 22 min  
 4. 15 min

Question ID : 26433075699  
Status : Answered  
Chosen Option : 2

**Q.3** Successive discounts of 10%, 15% and 20% amount to a single discount of:

- Ans  1. 38.8%  
 2. 35.8%  
 3. 39.7%  
 4. 33.7%

Question ID : 26433061382

Status : **Not Attempted and Marked For Review**

Chosen Option : --

**Q.4** What is the volume of a cube (in  $\text{cm}^3$ ), whose longest diagonal measures  $11\sqrt{3}$  cm?

- Ans  1. 1000  
 2. 1331  
 3. 121  
 4. 144

Question ID : 26433075007

Status : **Answered**

Chosen Option : 2

**Q.5** If radius of a cylinder is increased by 20% keeping the height unchanged, then by what percent does the volume of the cylinder increase?

- Ans  1. 44%  
 2. 40%  
 3. 24%  
 4. 50%

Question ID : 26433083060

Status : **Answered**

Chosen Option : 1

**Q.6** Find the fourth proportional to  $7x - 1$ ,  $9x + 5$  and  $8x + 1$ , if  $x = 3$ .

- Ans  1. 50  
 2. 30  
 3. 60  
 4. 40

Question ID : 26433080183

Status : **Answered**

Chosen Option : 4

Q.7 Two objects were sold for ₹9,900 each. One object was sold at a loss of 10% and the other object was sold at a gain of 10%. The net gain or loss in the whole transaction is:

- Ans
- 1. Gain ₹1,000
  - 2. Loss ₹200
  - 3. Loss ₹600
  - 4. Gain ₹100

Question ID : 26433081561  
Status : Answered  
Chosen Option : 2

Q.8 A shopkeeper marks his goods 12 percent above cost price, but allows 12 percent discount for cash. His net gain or loss percent is:

- Ans
- 1. 1.44 percent loss
  - 2. No gain no loss
  - 3. 1.5 percent gain
  - 4. 1 percent loss

Question ID : 264330116738  
Status : Answered  
Chosen Option : 1

Q.9 What is the compound interest (in ₹ , rounded off to two decimal places) on ₹ 20,000 in two years at 4% per annum, the interest being compounded half-yearly?

- Ans
- 1. 1548.64
  - 2. 1600.00
  - 3. 1500.00
  - 4. 1648.64

Question ID : 26433075559  
Status : Answered  
Chosen Option : 4

Q.10 The average marks obtained in a subject by 60 students in a class is 82. The average marks of boys and girls in that subject are 75 and 85 respectively. The number of boys in the class is:

- Ans
- 1. 26
  - 2. 32
  - 3. 18
  - 4. 30

Question ID : 26433076263  
Status : Not Attempted and Marked For Review  
Chosen Option : --

**Q.11** If Rs.X is the price of 10 pens that cost Rs.42 per dozen, and Y hours is the time taken to travel 175 km at 12.5 km/h, then the value of  $X^2 + Y^2$  is:

- Ans**  1. 1421  
 2. 724  
 3. 881  
 4. 1850

Question ID : 26433075319  
Status : Answered  
Chosen Option : 1

**Q.12** The salary of Neeta is first increased by 13% and then it is decreased by 13%. What is the change in her salary?

- Ans**  1. Increase of 1.69%  
 2. Increase of 16.9%  
 3. Decrease of 16.9%  
 4. Decrease of 1.69%

Question ID : 26433074918  
Status : Answered  
Chosen Option : 4

**Q.13** Anupam started a business with an initial investment of ₹2,00,000. In the first year, he incurred a loss of 4%. However, during the second year, he earned a profit of 10%, and in the third year he earned a profit of 15%. Calculate his net profit for the entire period of three years.

- Ans**  1. ₹42,503  
 2. ₹42,808  
 3. ₹42,880  
 4. ₹42,530

Question ID : 26433076231  
Status : Not Answered  
Chosen Option : --

**Q.14** Two containers with equal capacity have milk and water in the ratio of 3 : 4 and 3 : 1 respectively. If both the containers are emptied into a bigger container having the capacity to contain the whole mixture, then what is the ratio of milk to water in the bigger container?

- Ans**  1. 32 : 31  
 2. 23 : 11  
 3. 33 : 21  
 4. 33 : 23

Question ID : 26433076394  
Status : Answered  
Chosen Option : 4

Q.15 A and B undertake to do a piece of work for Rs. 330. A can do it in 11 days and B can do it in 22 days. With the help of C, they finish it in 6 days. How much should C be paid for his work?

- Ans
- 1. Rs.140
  - 2. Rs.70
  - 3. Rs.80
  - 4. Rs.60

Question ID : 264330116853  
Status : Not Answered  
Chosen Option : --

Q.16 Two numbers are in the ratio of 2 : 3. Their HCF and LCM are 21 and 126, respectively. What is the difference of these two numbers?

- Ans
- 1. 18
  - 2. 20
  - 3. 21
  - 4. 25

Question ID : 26433080272  
Status : Answered  
Chosen Option : 3

Q.17 A and B together can do a piece of work in 12 days, B and C together in 15 days, C and A together in 20 days. If A, B and C work together, then how many days will be required to do the same work?

- Ans
- 1. 5
  - 2. 7
  - 3. 7.5
  - 4. 10

Question ID : 26433076205  
Status : Not Answered  
Chosen Option : --

Q.18 Mohan goes to office from home at a speed of 20 km/h and returns to home from office at a certain speed. If the average speed is 24 km/h, then what is the speed while returning?

- Ans
- 1. 30 km/h
  - 2. 28 km/h
  - 3. 32 km/h
  - 4. 26 km/h

Question ID : 26433075690  
Status : Answered  
Chosen Option : 2



Q.19 The smallest number which when reduced by 5, is divisible 12, 16, and 18 is:

- Ans
- 1. 137
  - 2. 161
  - 3. 173
  - 4. 149

Question ID : 26433082346  
Status : Not Answered  
Chosen Option : --

Q.20 Laxman marks his goods at 60% above the cost price and allows a discount of 20%.  
What is his gain/loss percentage?

- Ans
- 1. Profit 30%
  - 2. Loss 30%
  - 3. Profit 28%
  - 4. Loss 28%

Question ID : 26433075231  
Status : Not Answered  
Chosen Option : --

Section : Part-D-English

Q.1 Select the most appropriate synonym of the given word.

Counsel

- Ans
- 1. Slim
  - 2. Advice
  - 3. Minister
  - 4. Scintillate

Question ID : 26433088129  
Status : Answered  
Chosen Option : 2

Q.2 Select the most appropriate ANTONYM of the given word.

Protest

- Ans
- 1. Support
  - 2. Notice
  - 3. Provide
  - 4. Assert

Question ID : 26433090787  
Status : Answered  
Chosen Option : 1

Q.3 Select the most appropriate synonym of the given word.

Plead

- Ans
- 1. Mourn
  - 2. Reject
  - 3. Beseech
  - 4. Welcome

Question ID : 26433072190  
Status : Answered  
Chosen Option : 3

Q.4 Select the most appropriate ANTONYM of the underlying word in the given sentence and complete the sentence.

In the debate competition he scored less due to his banal arguments, while his opponent won because of his \_\_\_\_\_ arguments.

- Ans
- 1. pure
  - 2. timid
  - 3. novel
  - 4. weary

Question ID : 26433084710  
Status : Answered  
Chosen Option : 4

Q.5 Select the most appropriate ANTONYM of the given word.  
Blank

- Ans
- 1. Valuate
  - 2. Trembled
  - 3. Filled
  - 4. Filed

Question ID : 26433066090  
Status : Answered  
Chosen Option : 3

Q.6 Select the most appropriate option that can substitute the underlined segment in the given sentence.

The reign of Akbar was the one glorious periods in Indian history.

- Ans
- 1. was one of the glorious periods
  - 2. were one of the glorious period
  - 3. was one glorious periods
  - 4. was one of the glorious period

Question ID : 26433092286  
Status : Answered  
Chosen Option : 1

Q.7 Select the most appropriate option to fill in the blank.

Mike talks in an American \_\_\_\_\_.

- Ans
- 1. assent
  - 2. accent
  - 3. ascend
  - 4. ascent

Question ID : 26433084618  
Status : Answered  
Chosen Option : 4

Q.8 The following sentence has been divided into parts. One of them may contain an error.

Select the part that contains the error from the given options. If you don't find any error, mark 'No error' as your answer.

He will give you / good advice if / you will ask him.

- Ans
- 1. He will give you
  - 2. you will ask him
  - 3. good advice if
  - 4. No error

Question ID : 26433086359  
Status : Answered  
Chosen Option : 2

Q.9 Select the most appropriate option that can substitute the underlined segment in the given sentence.

If you not ready with the song, it is better to let them know.

- Ans
- 1. If you could not be ready with the song
  - 2. If you were not ready with the song
  - 3. If you would not be ready with the song
  - 4. If you are not ready with the song

Question ID : 26433091871  
Status : Answered  
Chosen Option : 4

Q.10 Select the INCORRECTLY spelt word.

- Ans
- 1. Theoretical
  - 2. Administration
  - 3. Amplefication
  - 4. Interpretation

Question ID : 26433073509  
Status : Answered  
Chosen Option : 3

**Q.11 Select the INCORRECTLY spelt word.**

**Ans** ✓ 1. Reluctent

✗ 2. Cautious

✗ 3. Ordinary

✗ 4. Slippery

Question ID : 26433073504  
Status : Answered  
Chosen Option : 1

**Q.12 Select the most appropriate meaning of the given idiom.**

**Spill the beans**

**Ans** ✗ 1. To swallow beans curry

✓ 2. Tell something that should be kept secret

✗ 3. To spit the bitter fruits

✗ 4. To hide important information

Question ID : 26433072577  
Status : Answered  
Chosen Option : 2

**Q.13 Select the most appropriate synonym of the given word to fill in the blank in the sentence.**

**Daunt**

My coach said, "Failures didn't \_\_\_\_\_ the hero."

**Ans** ✗ 1. brave

✗ 2. moralize

✓ 3. discourage

✗ 4. hopeless

Question ID : 26433060556  
Status : Answered  
Chosen Option : 3

**Q.14 Select the most appropriate meaning of the given idiom.**

**Back to square one**

**Ans** ✗ 1. To escape

✗ 2. To hope something happens the way you want it to

✗ 3. To be treated badly

✓ 4. Having to start all over again

Question ID : 26433072671  
Status : Answered  
Chosen Option : 4

**Q.15** Select the most appropriate option that can substitute the underlined segment in the given sentence.

He's in and out in town making plans.

- Ans
- 1. out and beside
  - 2. with and out
  - 3. out and about
  - 4. east and west

Question ID : 26433088508

Status : Answered

Chosen Option : 3

**Comprehension:**

In the following passage, some words have been deleted. Read the passage carefully and select the most appropriate option to fill in each blank.

Isolation and loneliness (1) \_\_\_\_\_ by the Covid-19 pandemic and lockdown policies negatively (2) \_\_\_\_\_ the mental health of the public throughout the entire globe. These result in an increase in emotional (3) \_\_\_\_\_, (4) \_\_\_\_\_ of hopelessness and extreme anxiety, which are (5) \_\_\_\_\_ by variations in emotional responses and style of living.

**SubQuestion No : 16**

**Q.16** Select the most appropriate option to fill in blank number 1.

- Ans
- 1. built
  - 2. constructed
  - 3. caused
  - 4. prepared

Question ID : 26433091733

Status : Answered

Chosen Option : 3

**Comprehension:**

In the following passage, some words have been deleted. Read the passage carefully and select the most appropriate option to fill in each blank.

Isolation and loneliness (1) \_\_\_\_\_ by the Covid-19 pandemic and lockdown policies negatively (2) \_\_\_\_\_ the mental health of the public throughout the entire globe. These result in an increase in emotional (3) \_\_\_\_\_, (4) \_\_\_\_\_ of hopelessness and extreme anxiety, which are (5) \_\_\_\_\_ by variations in emotional responses and style of living.

**SubQuestion No : 17**

**Q.17** Select the most appropriate option to fill in blank number 2.

- Ans
- 1. shown
  - 2. did
  - 3. formed
  - 4. impacted

Question ID : 26433091734

Status : Answered

Chosen Option : 4

**Comprehension:**

In the following passage, some words have been deleted. Read the passage carefully and select the most appropriate option to fill in each blank.

Isolation and loneliness (1) \_\_\_\_\_ by the Covid-19 pandemic and lockdown policies negatively (2) \_\_\_\_\_ the mental health of the public throughout the entire globe. These result in an increase in emotional (3) \_\_\_\_\_, (4) \_\_\_\_\_ of hopelessness and extreme anxiety, which are (5) \_\_\_\_\_ by variations in emotional responses and style of living.

**SubQuestion No : 18**

**Q.18 Select the most appropriate option to fill in blank number 3.**

- Ans**  1. stress  
 2. anxiety  
 3. death  
 4. state

Question ID : 26433091735

Status : Answered

Chosen Option : 2

**Comprehension:**

In the following passage, some words have been deleted. Read the passage carefully and select the most appropriate option to fill in each blank.

Isolation and loneliness (1) \_\_\_\_\_ by the Covid-19 pandemic and lockdown policies negatively (2) \_\_\_\_\_ the mental health of the public throughout the entire globe. These result in an increase in emotional (3) \_\_\_\_\_, (4) \_\_\_\_\_ of hopelessness and extreme anxiety, which are (5) \_\_\_\_\_ by variations in emotional responses and style of living.

**SubQuestion No : 19**

**Q.19 Select the most appropriate option to fill in blank number 4.**

- Ans**  1. feelings  
 2. notion  
 3. idea  
 4. concept

Question ID : 26433091736

Status : Answered

Chosen Option : 1

**Comprehension:**

In the following passage, some words have been deleted. Read the passage carefully and select the most appropriate option to fill in each blank.

Isolation and loneliness (1) \_\_\_\_\_ by the Covid-19 pandemic and lockdown policies negatively (2) \_\_\_\_\_ the mental health of the public throughout the entire globe. These result in an increase in emotional (3) \_\_\_\_\_, (4) \_\_\_\_\_ of hopelessness and extreme anxiety, which are (5) \_\_\_\_\_ by variations in emotional responses and style of living.

**SubQuestion No : 20**

**Q.20** Select the most appropriate option to fill in blank number 5.

- Ans  1. accompanied  
 2. preserved  
 3. guarded  
 4. surrounded

Question ID : 26433091737  
Status : Answered  
Chosen Option : 4

## Section : Part-D-Hindi

**Q.1** 'विश्वस्त' शब्द के लिए उचित वाक्यांश है-

- Ans  1. जिस पर विश्वास न किया गया हो  
 2. जिस पर शक किया गया हो  
 3. जिसे बहुत याद किया गया हो  
 4. जिस पर विश्वास किया गया हो

Question ID : 26433065872  
Status : Not Answered  
Chosen Option : --

**Q.2** निम्नलिखित वाक्यांश के लिए उपयुक्त सार्थक शब्द क्या होगा?  
जिसे पढ़ना-लिखना आता हो

- Ans  1. साक्षर  
 2. प्रधान  
 3. पढ़ाकू  
 4. विद्वान

Question ID : 26433065752  
Status : Not Answered  
Chosen Option : --

**Q.3** निम्नलिखित में से कौन-सा वाक्य संज्ञा के प्रयोग की दृष्टि से शुद्ध है?

- Ans  1. राहुल बचपने में बहुत शरारती था।  
 2. राहुल बचपने में बड़ा शरारती था।  
 3. राहुल का बचपनत्व बहुत शरारती था।  
 4. राहुल बचपन में बहुत शरारती था।

Question ID : 26433066961  
Status : Not Answered  
Chosen Option : --

Q.4 'प्रकृति कुपित होकर अपना \_\_\_\_\_ रूप दिखाती है।' रिक्त स्थान की पूर्ति उचित शब्द द्वारा कीजिए।

- Ans
- 1. अहितकारी
  - 2. विनाशकारी
  - 3. कल्याणकारी
  - 4. निर्माणकारी

Question ID : 26433069682  
Status : Not Answered  
Chosen Option : --

Q.5 'स्वजाति' के विपरीतार्थक शब्द का चयन कर निम्न वाक्य पूर्ण कीजिए।  
\_\_\_\_\_ व्यक्ति से नफरत न करें।

- Ans
- 1. विजाति
  - 2. सुमति
  - 3. प्रजाति
  - 4. संपत्ति

Question ID : 26433063090  
Status : Not Answered  
Chosen Option : --

Q.6 विकल्पों में दिए गए किस वाक्य में निम्न शब्द के पर्यायवाची शब्द का प्रयोग हुआ है?  
तालाब

- Ans
- 1. सरिता सूखी है।
  - 2. मेघ फट पड़े।
  - 3. पंक में कमल खिला है।
  - 4. जलाशय में कमल खिला है।

Question ID : 26433066934  
Status : Not Answered  
Chosen Option : --

Q.7 निम्नलिखित वाक्य के किस पद में त्रुटि है?  
मैंने सुइ, कंधि, दर्पण और पुस्तकें मोल लीं।

- Ans
- 1. मैंने, लीं
  - 2. दर्पण, पुस्तकें
  - 3. सुइ, कंधि
  - 4. और, मोल

Question ID : 26433063067  
Status : Not Answered  
Chosen Option : --



Q.8 निम्नलिखित में से अशुद्ध वाक्य कौन-सा है?

- Ans
- 1. निशांत होनहार लड़का है।
  - 2. वह नित्य गाने की कसरत करता है।
  - 3. पल्लवी कल मुंबई जाएगी।
  - 4. हमें प्रतिदिन व्यायाम करना चाहिए।

Question ID : 26433066986  
Status : Not Answered  
Chosen Option : --

Q.9 "तुम उसे गालियाँ क्यों निकाल रहे हो?"  
उपरोक्त वाक्य में क्रिया सम्बन्धी त्रुटि पहचानकर निम्नलिखित में से शुद्ध वाक्य का चयन कीजिए।

- Ans
- 1. तुम उसे गालियाँ क्यों दे रहे हो?
  - 2. तुम उसे गालियाँ क्यों बोल रहे हो?
  - 3. तुम उसे गालियाँ क्यों बता रहे हो?
  - 4. तुम उसे गालियाँ क्यों कह रहे हो?

Question ID : 26433066974  
Status : Not Answered  
Chosen Option : --

Q.10 'मक्खी मारना' मुहावरे का क्या अर्थ है?

- Ans
- 1. इधर-उधर करना
  - 2. बेकार बैठे रहना
  - 3. मक्खियों को उड़ाना
  - 4. परेशान करना

Question ID : 26433066807  
Status : Not Answered  
Chosen Option : --

Q.11 'जो सिद्ध या पूरा किया जा सके' इस वाक्यांश के लिए सार्थक शब्द है -

- Ans
- 1. इच्छा
  - 2. अभिलाषा
  - 3. साध्य
  - 4. गंतव्य

Question ID : 26433062333  
Status : Not Answered  
Chosen Option : --

Q.12 निम्नलिखित मुहावरे में कौन सा शब्द अशुद्ध है?  
सौ लकड़हारे की एक लोहार की

- Ans  1. लकड़हारे  
 2. एक  
 3. सौ  
 4. लोहार

Question ID : 26433062814  
Status : Not Answered  
Chosen Option : --

Q.13 रेखांकित शब्द के विलोम से दिए गए वाक्य के रिक्त स्थान की पूर्ति कीजिए।  
उत्तम प्रकृति के लोग सम्मानित होते हैं किंतु दुष्ट \_\_\_\_\_।

- Ans  1. असहनीय  
 2. लांछित  
 3. निर्लज्ज  
 4. अपमानित

Question ID : 26433085004  
Status : Not Answered  
Chosen Option : --

Q.14 मेरी शिमला जाने की बड़ी इच्छा है।  
उपरोक्त वाक्य में रेखांकित शब्द के उचित पर्यायवाची शब्द का चयन विकल्पों में से कीजिए।

- Ans  1. अतुल  
 2. अभिलाषा  
 3. स्मृति  
 4. प्रेम

Question ID : 26433079721  
Status : Not Answered  
Chosen Option : --

Q.15 विकल्पों में से कौन सा शब्द निम्न वाक्य के रेखांकित शब्द के लिए सर्वाधिक उपयुक्त होगा?  
'सीता राम की स्त्री थी'

- Ans  1. महिला  
 2. पत्नी  
 3. नायिका  
 4. औरत

Question ID : 26433066712  
Status : Not Answered  
Chosen Option : --

**Comprehension:**

निम्नलिखित गद्यांश में से कुछ शब्द हटा दिए गए हैं। दिए गए विकल्पों की सहायता से रिक्त स्थानों की पूर्ति कीजिए। प्रत्येक संख्या के लिए उपयुक्त विकल्प का चयन कीजिए।  
एक बार मैं बस में 1. \_\_\_\_\_ कर रहा था। मेरे साथ मेरी पत्नी और तीन बच्चे 2. \_\_\_\_\_ थे। बस में कुछ खराबी थी, रुक-रुक कर चलती थी। गंतव्य से कोई आठ 3. \_\_\_\_\_ पहले ही एक निर्जन सुनसान स्थान में बस ने जवाब दे दिया। रात के कोई दस 4. \_\_\_\_\_ होंगे। बस में यात्री घबरा गए। कंडक्टर उतर गया 5. \_\_\_\_\_ एक साइकिल लेकर चलता बना।

**SubQuestion No : 16**

Q.16 रिक्त स्थान 1 की पूर्ति के लिए सर्वाधिक उपयुक्त विकल्प का चयन कीजिए।

- Ans
- 1. खेल
  - 2. आराम
  - 3. भजन
  - 4. यात्रा

Question ID : 26433079698

Status : Not Answered

Chosen Option : --

**Comprehension:**

निम्नलिखित गद्यांश में से कुछ शब्द हटा दिए गए हैं। दिए गए विकल्पों की सहायता से रिक्त स्थानों की पूर्ति कीजिए। प्रत्येक संख्या के लिए उपयुक्त विकल्प का चयन कीजिए।  
एक बार मैं बस में 1. \_\_\_\_\_ कर रहा था। मेरे साथ मेरी पत्नी और तीन बच्चे 2. \_\_\_\_\_ थे। बस में कुछ खराबी थी, रुक-रुक कर चलती थी। गंतव्य से कोई आठ 3. \_\_\_\_\_ पहले ही एक निर्जन सुनसान स्थान में बस ने जवाब दे दिया। रात के कोई दस 4. \_\_\_\_\_ होंगे। बस में यात्री घबरा गए। कंडक्टर उतर गया 5. \_\_\_\_\_ एक साइकिल लेकर चलता बना।

**SubQuestion No : 17**

Q.17 रिक्त स्थान 2 की पूर्ति के लिए सर्वाधिक उपयुक्त विकल्प का चयन कीजिए।

- Ans
- 1. भर
  - 2. तक
  - 3. भी
  - 4. सामने

Question ID : 26433079699

Status : Not Answered

Chosen Option : --

**Comprehension:**

निम्नलिखित गद्यांश में से कुछ शब्द हटा दिए गए हैं। दिए गए विकल्पों की सहायता से रिक्त स्थानों की पूर्ति कीजिए। प्रत्येक संख्या के लिए उपयुक्त विकल्प का चयन कीजिए।  
एक बार मैं बस में 1. \_\_\_\_\_ कर रहा था। मेरे साथ मेरी पत्नी और तीन बच्चे 2. \_\_\_\_\_ थे। बस में कुछ खराबी थी, रुक-रुक कर चलती थी। गंतव्य से कोई आठ 3. \_\_\_\_\_ पहले ही एक निर्जन सुनसान स्थान में बस ने जवाब दे दिया। रात के कोई दस 4. \_\_\_\_\_ होंगे। बस में यात्री घबरा गए। कंडक्टर उतर गया 5. \_\_\_\_\_ एक साइकिल लेकर चलता बना।

**SubQuestion No : 18**

Q.18 रिक्त स्थान 3 की पूर्ति के लिए सर्वाधिक उपयुक्त विकल्प का चयन कीजिए।

- Ans
- 1. किलो
  - 2. मिलीमीटर
  - 3. किलोमीटर
  - 4. सेंटीमीटर

Question ID : 26433079700

Status : Not Answered

Chosen Option : --

**Comprehension:**

निम्नलिखित गद्यांश में से कुछ शब्द हटा दिए गए हैं। दिए गए विकल्पों की सहायता से रिक्त स्थानों की पूर्ति कीजिए। प्रत्येक संख्या के लिए उपयुक्त विकल्प का चयन कीजिए।  
एक बार मैं बस में 1. \_\_\_\_\_ कर रहा था। मेरे साथ मेरी पत्नी और तीन बच्चे 2. \_\_\_\_\_ थे। बस में कुछ खराबी थी, रुक-रुक कर चलती थी। गंतव्य से कोई आठ 3. \_\_\_\_\_ पहले ही एक निर्जन सुनसान स्थान में बस ने जवाब दे दिया। रात के कोई दस 4. \_\_\_\_\_ होंगे। बस में यात्री घबरा गए। कंडक्टर उतर गया 5. \_\_\_\_\_ एक साइकिल लेकर चलता बना।

**SubQuestion No : 19**

Q.19 रिक्त स्थान 4 की पूर्ति के लिए सर्वाधिक उपयुक्त विकल्प का चयन कीजिए।

- Ans
- 1. पद
  - 2. समय
  - 3. बजे
  - 4. गज

Question ID : 26433079701

Status : Not Answered

Chosen Option : --

**Comprehension:**

निम्नलिखित गद्यांश में से कुछ शब्द हटा दिए गए हैं। दिए गए विकल्पों की सहायता से रिक्त स्थानों की पूर्ति कीजिए। प्रत्येक संख्या के लिए उपयुक्त विकल्प का चयन कीजिए।  
एक बार मैं बस में 1. \_\_\_\_\_ कर रहा था। मेरे साथ मेरी पत्नी और तीन बच्चे 2. \_\_\_\_\_ थे। बस में कुछ खराबी थी, रुक-रुक कर चलती थी। गंतव्य से कोई आठ 3. \_\_\_\_\_ पहले ही एक निर्जन सुनसान स्थान में बस ने जवाब दे दिया। रात के कोई दस 4. \_\_\_\_\_ होंगे। बस में यात्री घबरा गए। कंडक्टर उतर गया 5. \_\_\_\_\_ एक साइकिल लेकर चलता बना।

**SubQuestion No : 20**

Q.20 रिक्त स्थान 5 की पूर्ति के लिए सर्वाधिक उपयुक्त विकल्प का चयन कीजिए।

- Ans  1. और  
 2. क्योंकि  
 3. परंतु  
 4. किंतु

Question ID : 26433079702

Status : Not Answered

Chosen Option : --

KD Job Updates

## Constable GD in CAPFs SSF Rifleman GD in Assam Rifles and Sepoy in NCB Examination 2022

Roll Number	KD Job Updates
Candidate Name	KD Job Updates
Venue Name	iON Digital Zone iDZ 1 Patliputra
Exam Date	31/01/2023
Exam Time	9:00 AM - 10:00 AM
Subject	Constable GD Examination 2022

Section : Part-A-General Intelligence and Reasoning

Q.1 In a certain code language,  
'A + B' means 'A is the mother of B',  
'A - B' means 'A is the father of B',  
'A x B' means 'A is the brother of B' and  
'A & B' means 'A is the wife of B'.  
How is N related to R if N & P - Q + T x R?

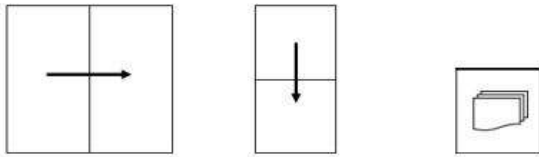
- Ans  1. Mother's mother  
 2. Mother's sister  
 3. Mother  
 4. Father's mother

Question ID : 26433070372

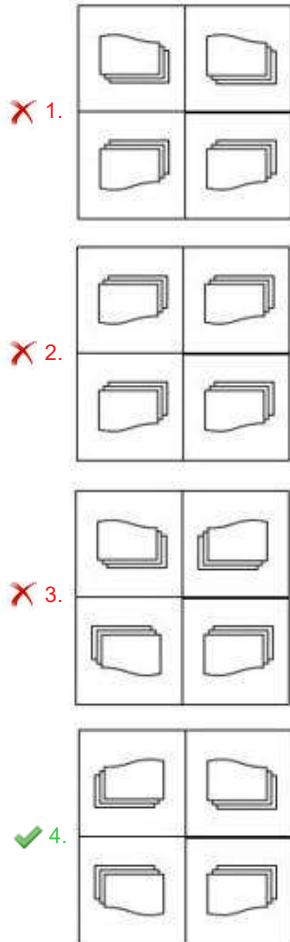
Status : Answered

Chosen Option : 1

Q.2 A paper is folded and cut as shown below. How will it appear when unfolded?



Ans



Question ID : 26433089788

Status : Answered

Chosen Option : 1

Q.3 Which of the following terms will replace the question mark (?) in the given series?  
UNEO, TLBK, SJYG, ?, QFSY

- Ans
- ✗ 1. HCVR
  - ✗ 2. CVHR
  - ✗ 3. VRCH
  - ✓ 4. RHVC

Question ID : 26433068984

Status : Answered

Chosen Option : 4

**Q.4** Select the option that is related to the third word in the same way as the second word is related to the first word.  
(The words must be considered as meaningful English words and must not be related to each other based on the number of letters/number of consonants/vowels in the word)

Colour : Green :: Figure : ?

- Ans
- 1. Angle
  - 2. Diagonal
  - 3. Triangle
  - 4. Point

Question ID : 26433079475  
Status : Answered  
Chosen Option : 3

**Q.5** In a certain code language, 'AROUND' is written as 'PSBFPW' and 'ARTIST' is written as 'USBVUK'. How will 'AUTHOR' be written as in that language?

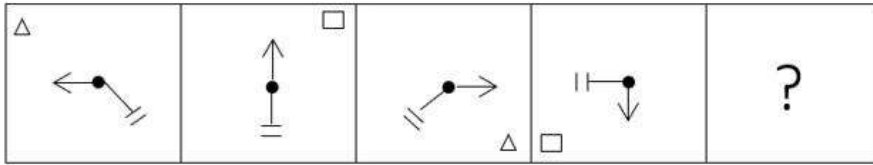
- Ans
- 1. ROHTUA
  - 2. TUAROH
  - 3. UVBTQJ
  - 4. UVBROH

Question ID : 26433090037  
Status : Answered  
Chosen Option : 3

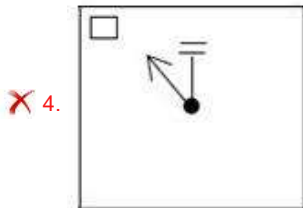
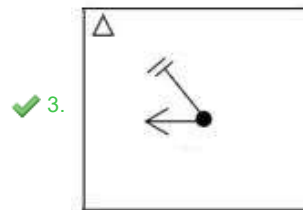
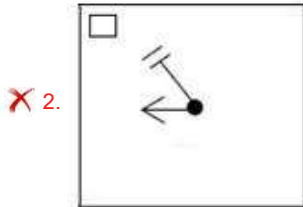
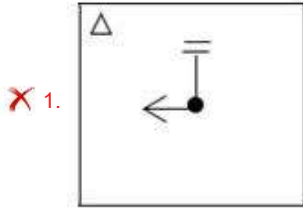
KD Job Updates



**Q.6** Select the figure from among the given options that can replace the question mark (?) in the following series.



**Ans**



KD Job Updates

Question ID : 26433080751  
 Status : Answered  
 Chosen Option : 3

**Q.7** Which of the following numbers will replace the question mark (?) in the given series?  
 1, 9, 65, 457, ?

- Ans**
- ✗ 1. 4258
  - ✗ 2. 3125
  - ✓ 3. 3201
  - ✗ 4. 5289

Question ID : 26433082011  
 Status : Not Answered  
 Chosen Option : --

**Q.8** Which two signs should be interchanged in the following equation to make it correct?  
 $87 \times 24 \div 12 - 16 + 14 = 176$

**Ans** ✓ 1. - and +

✗ 2.  $\times$  and +

✗ 3.  $\div$  and +

✗ 4.  $\times$  and  $\div$

Question ID : 26433090137

Status : Answered

Chosen Option : 1

**Q.9** Six students Lucy, Lorraine, Simran, Dolly, Vikas and Frances are sitting around a circular table facing the centre. Lucy is sitting second to the left of Frances. Lorraine is sitting second to the left of Lucy. Vikas is sitting to the immediate right of Lorraine. Simran is sitting second to the left of Vikas. Dolly is an immediate neighbour to Lucy. Who is sitting between Frances and Lorraine?

**Ans** ✓ 1. Simran

✗ 2. Lucy

✗ 3. Dolly

✗ 4. Vikas

Question ID : 26433081784

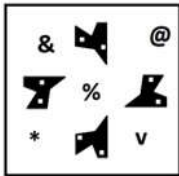
Status : Answered

Chosen Option : 1

KD Job Updates


Q.10 Which of the following figures is the exact mirror image of the given problem figure when the mirror is held at the right side?

Problem figure:

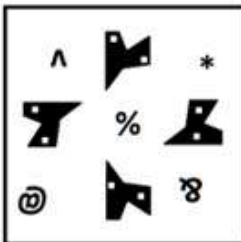


Ans

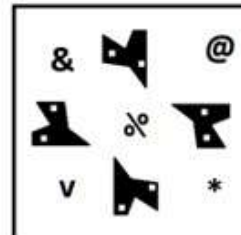
✗ 1.



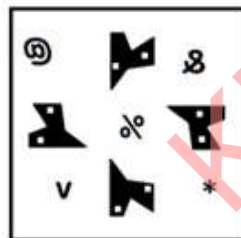
✗ 2.



✗ 3.



✓ 4.



Question ID : 26433087087  
Status : Answered  
Chosen Option : 4

Q.11 Select the option that is related to the fifth number in the same way as the second number is related to the first number and the fourth number is related to the third number.

18 : 3 :: 55 : 4 :: 334 : ?

- Ans
- 1. 8
  - 2. 6
  - 3. 5
  - 4. 7

Question ID : 26433069423  
Status : Answered  
Chosen Option : 4

Q.12 In a certain code language, 'SHIP' is written as 'T17O' and 'KITE' is written as 'L29D'. How will 'HOPE' be written in that language?

- Ans
- 1. I30D
  - 2. H31E
  - 3. D31I
  - 4. I31D

Question ID : 26433069644  
Status : Answered  
Chosen Option : 4

Q.13 Which of the following numbers will replace the question marks (?) in the given series?

1, 3, 4, 7, ?, ?, 29

- Ans
- 1. 10, 20
  - 2. 12, 22
  - 3. 14, 24
  - 4. 11, 18

Question ID : 26433070221  
Status : Answered  
Chosen Option : 4

Q.14 Which option represents the correct order of the given words as they would appear in the English dictionary?

- 1 gather
- 2 garbage
- 3 gamble
- 4 garnish
- 5 gastronomy

- Ans
- 1. 3,4,1,2,5
  - 2. 3,5,2,1,3
  - 3. 3,2,4,5,1
  - 4. 3,4,2,5,1

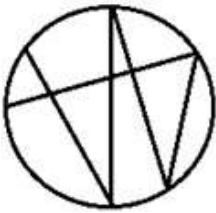
Question ID : 26433069326  
Status : Answered  
Chosen Option : 3

Q.15 Select the option figure in which the given figure is embedded as its part (rotation is not allowed).

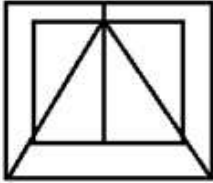


Ans


✗ 1.



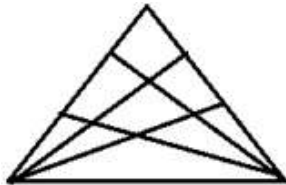
✓ 2.



✗ 3.



✗ 4.



Question ID : 26433069537  
Status : Answered  
Chosen Option : 2

Q.16 Which of the mathematical signs should be interchanged in the below equation to make it mathematically correct?  
 $320 \times 8 - 216 + 72 \div 5 = 184$

Ans ✗ 1. + and ×

✗ 2. - and ÷

✗ 3. + and ÷

✓ 4. × and ÷

Question ID : 264330117525  
Status : Answered  
Chosen Option : 4

Q.17 Select the letter-cluster from among the given options that can replace the question mark (?) in the following series.  
KRBP, IPHV, GNNB, ? , CJZN

- Ans  1. ELTH  
 2. PDLR  
 3. ETLH  
 4. PRSB

Question ID : 26433074753  
Status : Answered  
Chosen Option : 1

Q.18 Three statements are given, followed by three conclusions numbered I, II and III. Assuming the statements to be true, even if they seem to be at variance with commonly known facts, decide which of the conclusions logically follow(s) from the statements.

Statements:  
All pencils are erasers.  
All pens are erasers.  
All erasers are scales.

Conclusions:  
I. All pens are scales.  
II. All erasers are pencils.  
III. Some erasers are pens.

- Ans  1. Only conclusion I and II follow  
 2. Only conclusions II and III follow  
 3. All conclusions follow  
 4. Only conclusions I and III follow

Question ID : 26433090986  
Status : Answered  
Chosen Option : 4

Q.19 Select the option that is related to the third word in the same way as the second word is related to the first word. (The words must be considered as meaningful English words and must not be related to each other based on the number of letters/number of consonants/vowels in the word.)  
Success : Failure :: Probably : ?

- Ans  1. Urgently  
 2. Definitely  
 3. Perhaps  
 4. Promptly

Question ID : 26433067376  
Status : Answered  
Chosen Option : 2

Q.20 Six people P, Q, R, S, T, and U are sitting on a wall facing the South. Only Q is sitting between P and S. U is the immediate left of R. T is sitting to the right of S. Q is to the immediate right of P. Only U is between T and R. Who is sitting to the immediate right of S?

- Ans
- 1. U
  - 2. P
  - 3. T
  - 4. R

Question ID : 26433074627  
Status : Answered  
Chosen Option : 3

Section : Part-B-General Knowledge and General awareness

Q.1 Who is elected as the first woman member of Rajya Sabha in India from Nagaland in April 2022?

- Ans
- 1. Phangnon Konyak
  - 2. Miriam Rengma
  - 3. Jesmina Zeliang
  - 4. Priyanka Gandhi

Question ID : 264330114957  
Status : Answered  
Chosen Option : 1

Q.2 Chhath Puja is dedicated to which of the following Gods?

- Ans
- 1. Shiva
  - 2. Surya Dev
  - 3. Krishna
  - 4. Rama

Question ID : 264330105969  
Status : Answered  
Chosen Option : 2

Q.3 When did the first phase of Green Revolution started?

- Ans
- 1. Mid 1980s
  - 2. Mid 1970s
  - 3. Mid 1960s
  - 4. Mid 1950s

Question ID : 26433054626  
Status : Answered  
Chosen Option : 3

Q.4 The \_\_\_\_\_th Amendment (in the year 2020), of Indian Constitution extended the reservation of Scheduled Castes and Scheduled Tribes.

- Ans
- 1. 106
  - 2. 107
  - 3. 105
  - 4. 104

Question ID : 264330116229  
Status : Answered  
Chosen Option : 4

Q.5 Microfinance institution provides financial services to \_\_\_\_\_ individuals.

- Ans
- 1. illegal-income
  - 2. high-income
  - 3. low-income
  - 4. ex-army men

Question ID : 264330115312  
Status : Answered  
Chosen Option : 1

Q.6 Fundamental Duties were included in the Indian constitution on the recommendation of \_\_\_\_\_.

- Ans
- 1. Shah Commission
  - 2. Administrative Reform Commission
  - 3. Swaran Singh Committee
  - 4. Mandal Commission

Question ID : 264330115630  
Status : Answered  
Chosen Option : 4

Q.7 What is the primary motive of a private sector entity?

- Ans
- 1. Profit
  - 2. Public welfare
  - 3. Promote government policies
  - 4. Charity

Question ID : 264330116081  
Status : Answered  
Chosen Option : 1



**Q.8 Who became the second lieutenant governor of Jammu and Kashmir?**

**Ans** ✓ 1. Shri Manoj Sinha

✗ 2. Shri Praful Patel

✗ 3. Shri Radha Krishna Mathur

✗ 4. Shri Girish Chandra Murmu

Question ID : 264330115015

Status : Answered

Chosen Option : 2

**Q.9 Which of the following is primarily NOT associated with the folk-dance forms of Punjab?**

**Ans** ✗ 1. Luddi

✗ 2. Giddha

✓ 3. Lavani

✗ 4. Bhangra

Question ID : 26433071450

Status : Answered

Chosen Option : 1

**Q.10 The waste we generate is \_\_\_\_\_.**

I. Biodegradable

II. Non-biodegradable

**Ans** ✗ 1. Neither I nor II

✗ 2. Only I

✗ 3. Only II

✓ 4. Both I and II

Question ID : 264330115259

Status : Answered

Chosen Option : 4

**Q.11 Who among the following was conferred a Doctorate by the Akhil Bharatiya Gandharva Mahavidyalaya in 1981?**

**Ans** ✗ 1. Pandit Birju Maharaj

✓ 2. Kelucharan Mohapatra

✗ 3. M.R Krishnamurthy

✗ 4. Amala Akkineni

Question ID : 264330115883

Status : Not Answered

Chosen Option : --

**Q.12 Article 157 of the Constitution of India, states which of the following qualifications to be fulfilled for a person to be appointed Governor of a state?**

- (i) He/She should be an Indian citizen.  
(ii) He/She should have completed 35 years of age.

- Ans  1. Only (ii)  
 2. Only (i)  
 3. Neither (i) nor (ii)  
 4. Both (i) and (ii)

Question ID : 26433089916  
Status : Answered  
Chosen Option : 4

**Q.13 Which is the outermost layer of the earth composed of crust and upper mantle?**

- Ans  1. Lithosphere  
 2. Asthenosphere  
 3. Outer Core  
 4. Mesosphere

Question ID : 264330115995  
Status : Answered  
Chosen Option : 2

**Q.14 Sports Authority of India was formed in which year?**

- Ans  1. 1982  
 2. 1983  
 3. 1987  
 4. 1984

Question ID : 264330116300  
Status : Not Answered  
Chosen Option : --

**Q.15 Whose prashasti was found on the Ashokan pillar at Allahabad?**

- Ans  1. Samudragupta  
 2. Chandragupta II  
 3. Chandragupta  
 4. Samudragupta II

Question ID : 26433089191  
Status : Answered  
Chosen Option : 4

Q.16 Main aim of Green Revolution was to \_\_\_\_\_.

- Ans  1. increase the production of High Yielding Variety of food crops  
 2. decrease the consumption of Chloro Floro Chemicals  
 3. decrease the production of milk  
 4. increase the total area of land

Question ID : 264330115419  
Status : Answered  
Chosen Option : 1

Q.17 The second round table conference was held in \_\_\_\_\_.

- Ans  1. December 1929  
 2. October 1930  
 3. March 1931  
 4. December 1931

Question ID : 26433089891  
Status : Answered  
Chosen Option : 3

Q.18 Milk and face cream are examples of \_\_\_\_\_.

- Ans  1. emulsion  
 2. aerosol  
 3. sol  
 4. foam

Question ID : 264330115176  
Status : Answered  
Chosen Option : 1

Q.19 Which of the following cannot be considered as a health infrastructure indicator?

- Ans  1. maternal mortality  
 2. infant mortality  
 3. life expectancy  
 4. cost of living

Question ID : 264330115559  
Status : Answered  
Chosen Option : 4

**Q.20** As per FIFA rules, the circumference of a football ball used in official sanctioned matches must measure between:

- Ans  1. 27 and 28 inches.  
 2. 25 and 26 inches.  
 3. 29 and 30 inches.  
 4. 24 and 25 inches.

Question ID : 264330115943  
Status : Not Answered  
Chosen Option : --

Section : Part-C-Elementary Mathematics

**Q.1** In a village, the population increased from 12,500 to 15,000 in a year. What is the percentage increase in population in a year?

- Ans  1. 15%  
 2. 10%  
 3. 25%  
 4. 20%

Question ID : 26433085432  
Status : Answered  
Chosen Option : 4

**Q.2** Of the two numbers, 28% of the first is equal to 64% of the second. What is the ratio of the first and second number?

- Ans  1. 16 : 7  
 2. 7 : 16  
 3. 5 : 8  
 4. 8 : 5

Question ID : 26433082386  
Status : Answered  
Chosen Option : 1

**Q.3** Three cubes each of volume  $4096 \text{ cm}^3$  are joined end to end to form a new solid. What is the surface area of the new solid?

- Ans  1.  $1536 \text{ cm}^2$   
 2.  $3584 \text{ cm}^2$   
 3.  $1792 \text{ cm}^2$   
 4.  $1280 \text{ cm}^2$

Question ID : 26433087418  
Status : Answered  
Chosen Option : 2

**Q.4** A train travelling at the speed of 65 km/h leaves Bombay at 10:00 A.M. and another train travelling at the speed of 76 km/h starts at 12:00 P.M. in the same direction. At what distance (in km) from Bombay will they be together?

- Ans
- 1. 925 km
  - 2. 988 km
  - 3. 898.18 km
  - 4. 1,000 km

Question ID : 26433075505  
Status : Answered  
Chosen Option : 3

**Q.5** Sohan invested Rs.6,250 for future and he gets Rs.15,552 after 5 years. If the interest is compounded yearly, then what is the rate of interest?

- Ans
- 1. 20%
  - 2. 15%
  - 3. 10%
  - 4. 18%

Question ID : 26433075684  
Status : Not Answered  
Chosen Option : --

**Q.6** The mean proportional between 0.09 and 0.64 is:

- Ans
- 1. 0.24
  - 2. 0.72
  - 3. 5.76
  - 4. 2.4

Question ID : 26433087369  
Status : Answered  
Chosen Option : 1

**Q.7** After allowing a discount of 12% on its marked price, the selling price of a mobile phone is Rs.22,352. If no discount is allowed, then the shopkeeper gains 25%. The cost price of the mobile phone is:

- Ans
- 1. Rs.20,320
  - 2. Rs.20,230
  - 3. Rs.22,320
  - 4. Rs.22,560

Question ID : 26433075188  
Status : Answered  
Chosen Option : 1

Q.8 A container contains 36 litres of water. From this container, 6 litres of the content were taken out and replaced by oil. This process was repeated two times. How much water is inside the container?

- Ans
- 1. 30 litres
  - 2. 28 litres
  - 3. 25 litres
  - 4. 20 litres

Question ID : 26433076068  
Status : Answered  
Chosen Option : 3

Q.9 A boat can travel at a speed of 15.5 km/h in still water. If speed of the stream is 4.5 km/h, then how much time will it take to go 76 km downstream and 104.5 km upstream?

- Ans
- 1. 15 hours 20 minutes
  - 2. 13 hours 18 minutes
  - 3. 12 hours 30 minutes
  - 4. 18 hours 13 minutes

Question ID : 26433063239  
Status : Answered  
Chosen Option : 2

Q.10 Sidhu wants to join a college and finds the rating of 9 out of 10 for campus placements and 8 out of 10 for teaching. Based on his requirement Sidhu gives 55% weightage to campus placements, and 45% weightage to teaching. The final rating of the college out of 10 is:

- Ans
- 1. 7.45
  - 2. 8.15
  - 3. 8.55
  - 4. 9.15

Question ID : 26433079910  
Status : Not Answered  
Chosen Option : --

Q.11 If the surface area of a sphere  $S_1$  is 800% greater than that of sphere  $S_2$ , and the volume of sphere  $S_2$  is  $x\%$  lower than sphere  $S_1$ , then 'x' in terms of percentage is: (Rounded off to two places of decimals)

- Ans
- 1. 80.30%
  - 2. 3.70%
  - 3. 96.29%
  - 4. 2.68%

Question ID : 26433079918  
Status : Not Answered  
Chosen Option : --

Q.12 A coffee maker with a marked price of Rs.4,500 is available on successive discounts of 20%, 10% and 5%. Find the selling price of the coffee maker.

- Ans
- 1. Rs.3,072
  - 2. Rs.3,076
  - 3. Rs.3,074
  - 4. Rs.3,078

Question ID : 26433082972  
Status : Answered  
Chosen Option : 4

Q.13 Rakesh can do a piece of work in 45 days and Manoj can do the same work in 90 days. Find the time required to complete the same work if they work on alternate days and Rakesh starts the work.

- Ans
- 1. 66 days
  - 2. 60 days
  - 3. 50 days
  - 4. 40 days

Question ID : 264330116913  
Status : Answered  
Chosen Option : 2

Q.14 Applied to a bill for ₹80,000, find the difference between a discount of 15% and two successive discounts of 10% and 5%.

- Ans
- 1. ₹200
  - 2. ₹600
  - 3. No difference
  - 4. ₹400

Question ID : 26433092160  
Status : Answered  
Chosen Option : 4

Q.15 If the sum of two numbers is 15 and their HCF and LCM are 3 and 18, respectively, then the sum of the reciprocals of the two numbers is:

- Ans
- 1.  $\frac{5}{18}$
  - 2.  $\frac{2}{9}$
  - 3.  $\frac{1}{9}$
  - 4.  $\frac{1}{6}$

Question ID : 26433091982  
Status : Answered  
Chosen Option : 1

Q.16 A shopkeeper sells one-fourth of his goods at a profit of 20%, another one-fourth at a profit of 25%, and another one-fourth at a profit of 10% and the rest at a loss of 5%. His overall profit percentage is:

- Ans
- 1. 10 Percent
  - 2. 20 Percent
  - 3. 12.5 Percent
  - 4. 25 Percent

Question ID : 26433081563  
Status : Answered  
Chosen Option : 3

Q.17 2 years ago, the value of my car was ₹ 3,62,500. If the value depreciates by 2% every year, then now its value (in ₹) is :

- Ans
- 1. 348145
  - 2. 354425
  - 3. 342254
  - 4. 338455

Question ID : 26433076276  
Status : Answered  
Chosen Option : 1

Q.18 Raju can do a piece of work in 10 hours and Ram can do it in 15 hours. In how much time will they finish the whole work working together?

- Ans
- 1. 4 hours
  - 2. 5 hours
  - 3. 7 hours
  - 4. 6 hours

Question ID : 26433075795  
Status : Answered  
Chosen Option : 4

Q.19 The radius of a hemisphere is 14 cm. Its curved surface area (in  $\text{cm}^2$ ) will be: (Use  $\pi = \frac{22}{7}$ )

- Ans
- 1. 1232
  - 2. 1132
  - 3. 1098
  - 4. 1188

Question ID : 26433085770  
Status : Answered  
Chosen Option : 1



Q.20 Three bells commence tolling together and toll at intervals of 8 sec, 10 sec and 12 sec respectively. In 30 min, how many times do they toll together?

- Ans
- 1. 14
  - 2. 17
  - 3. 16
  - 4. 18

Question ID : 26433082344  
Status : Answered  
Chosen Option : 1

Section : Part-D-English

Q.1 The sentence given below has one misspelt word. Spot the INCORRECTLY spelt word and select its correct spelling.

She wraped the gift in a gift paper.

- Ans
- 1. Vraped
  - 2. Vrapped
  - 3. Wrapped
  - 4. Wrraped

Question ID : 26433073562  
Status : Answered  
Chosen Option : 3

Q.2 Select the most appropriate option that can substitute the underlined segment in the given sentence.

When we went to the cinema, the film already started.

- Ans
- 1. had already started
  - 2. has started
  - 3. would already start
  - 4. was already start

Question ID : 26433088830  
Status : Answered  
Chosen Option : 1

Q.3 Parts of the following sentence have been given as options. One of them may contain an error. Select the part that contains the error from the given options. If you don't find any error, mark 'No error' as your answer.

He goes to Shimla every year but this year he was going to Goa.

- Ans
- 1. he was going to Goa
  - 2. No error
  - 3. but this year
  - 4. He goes to Shimla every year

Question ID : 26433088856  
Status : Answered  
Chosen Option : 2

Q.4 Select the appropriate idiom that can replace the underlined phrase in the following sentence.

He is experienced and full of wisdom as he is teaching chemistry at a university at a very young age of 25.

- Ans
- 1. an old head on young shoulders
  - 2. a frog in a small pond
  - 3. an alpha mom
  - 4. a silver fox

Question ID : 26433072282  
Status : Answered  
Chosen Option : 1

Q.5 Select the most appropriate synonym of the given word.

Serpentine

- Ans
- 1. Nascent
  - 2. Prosthetic
  - 3. Fiery
  - 4. Zigzag

Question ID : 26433073984  
Status : Answered  
Chosen Option : 1

Q.6 Select the most appropriate option that can substitute the underlined segment in the given sentence.

Between the 11 members of the team, there was great discord and this led to their dismal performance.

- Ans
- 1. Between the 11 member off the team
  - 2. Among the 11 members of the team
  - 3. Between the 11 members in the team
  - 4. Beside the 11 members of the team

Question ID : 26433091772  
Status : Answered  
Chosen Option : 2

Q.7 Select the most appropriate synonym of the given word.

Solitary

- Ans
- 1. Joyful
  - 2. Hardship
  - 3. Single
  - 4. Awkward

Question ID : 26433087914  
Status : Answered  
Chosen Option : 2

**Q.8** Select the most appropriate ANTONYM of the word given in the brackets to fill in the blank and complete the sentence.

I don't want to offend him, so I'm hesitant to say or do anything \_\_\_\_\_ (polite).

- Ans
- 1. bluff
  - 2. kind
  - 3. rude
  - 4. abrupt

Question ID : 26433089838  
Status : Answered  
Chosen Option : 3

**Q.9** Select the most appropriate meaning of the given idiom.  
Fish out of water

- Ans
- 1. Be nostalgic about something
  - 2. Be a survivor
  - 3. Not feeling comfortable in a new environment
  - 4. Go fishing

Question ID : 26433070802  
Status : Answered  
Chosen Option : 3

**Q.10** Select the most appropriate ANTONYM of the given word.

Misfortune

- Ans
- 1. Condemn
  - 2. Blessing
  - 3. Affliction
  - 4. Support

Question ID : 26433090793  
Status : Answered  
Chosen Option : 2

**Q.11** Select the correctly spelt word.

- Ans
- 1. Messenjer
  - 2. Messenger
  - 3. Masenger
  - 4. Massanger

Question ID : 26433094749  
Status : Answered  
Chosen Option : 4

Q.12 Select the most appropriate ANTONYM of the given word.

Compact

- Ans  1. Short  
 2. Expand  
 3. Multiple  
 4. Compress

Question ID : 26433090782  
Status : Answered  
Chosen Option : 2

Q.13 Select the most appropriate synonym of the underlined word in the given sentence.

Her progress is unparalleled with that of any other teacher.

- Ans  1. plight  
 2. scenario  
 3. dilemma  
 4. betterment

Question ID : 26433092106  
Status : Answered  
Chosen Option : 4

Q.14 Select the most appropriate synonym of the given word to fill in the blank in the sentence.

Compulsion

Some people have a disorder from which comes the \_\_\_\_\_ to check doors and ensure that they are properly locked.

- Ans  1. agreement  
 2. obligation  
 3. passion  
 4. exertion

Question ID : 26433060552  
Status : Answered  
Chosen Option : 4

Q.15 Select the most appropriate option that can substitute the underlined segment in the given sentence. If there is no need to substitute it, select 'No substitution'.

Because I had to catch the train, and as we were short on time, I forget to pack my toothbrush for our vacation.

- Ans  1. I have forget to pack my toothbrush for our vacation  
 2. I forgot to pack my toothbrush for our vacation  
 3. No substitution  
 4. I have forgot to pack my toothbrush for our vacation

Question ID : 264330101022  
Status : Answered  
Chosen Option : 2

**Comprehension:**

In the following passage, some words have been deleted. Read the passage carefully and select the most appropriate option to fill in each blank.

My breath is halted, like gasping for air (1) \_\_\_\_\_ crying far too long and hard. It is like a hiccup, with a shivering sharpness (2) \_\_\_\_\_ nerves. It is like icicles running (3) \_\_\_\_\_ your spine or aluminum in your mouth, an eerie amount of emotions that cannot compare (4) \_\_\_\_\_ the actual feelings you've managed to live (5) \_\_\_\_\_. I just watched you die; I say to myself silently.

**SubQuestion No : 16**

**Q.16 Select the most appropriate option to fill in blank number 1.**

Ans  1. under

2. about

3. after

4. in

Question ID : 26433091381

Status : Answered

Chosen Option : 3

**Comprehension:**

In the following passage, some words have been deleted. Read the passage carefully and select the most appropriate option to fill in each blank.

My breath is halted, like gasping for air (1) \_\_\_\_\_ crying far too long and hard. It is like a hiccup, with a shivering sharpness (2) \_\_\_\_\_ nerves. It is like icicles running (3) \_\_\_\_\_ your spine or aluminum in your mouth, an eerie amount of emotions that cannot compare (4) \_\_\_\_\_ the actual feelings you've managed to live (5) \_\_\_\_\_. I just watched you die; I say to myself silently.

**SubQuestion No : 17**

**Q.17 Select the most appropriate option to fill in blank number 2.**

Ans  1. from

2. between

3. around

4. of

Question ID : 26433091382

Status : Answered

Chosen Option : 2

**Comprehension:**

In the following passage, some words have been deleted. Read the passage carefully and select the most appropriate option to fill in each blank.

My breath is halted, like gasping for air (1) \_\_\_\_\_ crying far too long and hard. It is like a hiccup, with a shivering sharpness (2) \_\_\_\_\_ nerves. It is like icicles running (3) \_\_\_\_\_ your spine or aluminum in your mouth, an eerie amount of emotions that cannot compare (4) \_\_\_\_\_ the actual feelings you've managed to live (5) \_\_\_\_\_. I just watched you die; I say to myself silently.

**SubQuestion No : 18**

**Q.18 Select the most appropriate option to fill in blank number 3.**

- Ans  1. besides  
 2. down  
 3. among  
 4. thorough

Question ID : 26433091383

Status : Answered

Chosen Option : 4

**Comprehension:**

In the following passage, some words have been deleted. Read the passage carefully and select the most appropriate option to fill in each blank.

My breath is halted, like gasping for air (1) \_\_\_\_\_ crying far too long and hard. It is like a hiccup, with a shivering sharpness (2) \_\_\_\_\_ nerves. It is like icicles running (3) \_\_\_\_\_ your spine or aluminum in your mouth, an eerie amount of emotions that cannot compare (4) \_\_\_\_\_ the actual feelings you've managed to live (5) \_\_\_\_\_. I just watched you die; I say to myself silently.

**SubQuestion No : 19**

**Q.19 Select the most appropriate option to fill in blank number 4.**

- Ans  1. away  
 2. to  
 3. inside  
 4. across

Question ID : 26433091384

Status : Answered

Chosen Option : 2

**Comprehension:**

In the following passage, some words have been deleted. Read the passage carefully and select the most appropriate option to fill in each blank.

My breath is halted, like gasping for air (1) \_\_\_\_\_ crying far too long and hard. It is like a hiccup, with a shivering sharpness (2) \_\_\_\_\_ nerves. It is like icicles running (3) \_\_\_\_\_ your spine or aluminum in your mouth, an eerie amount of emotions that cannot compare (4) \_\_\_\_\_ the actual feelings you've managed to live (5) \_\_\_\_\_. I just watched you die; I say to myself silently.

SubQuestion No : 20

Q.20 Select the most appropriate option to fill in blank number 5.

- Ans  1. within  
 2. through  
 3. out  
 4. instead

Question ID : 26433091385

Status : Answered

Chosen Option : 1

Section : Part-D-Hindi

Q.1 निम्नलिखित वाक्य में रेखांकित शब्द के स्थान पर उपयुक्त पर्यायवाची शब्द कौन-सा होगा?

ईश्वर मानव का सृजन करके वंदनीय हो गया।

- Ans  1. निर्माण  
 2. जन्म  
 3. पैदावार  
 4. उत्पत्ति

Question ID : 26433066902

Status : Not Answered

Chosen Option : --

Q.2 रेखांकित अंश के स्थान पर सबसे उपयुक्त विकल्प इनमें से कौन-सा है?

गतवर्ष वह दिल्ली जाने वाला है।

- Ans  1. उस वर्ष  
 2. पिछले वर्ष  
 3. विगत वर्ष  
 4. अगले वर्ष

Question ID : 26433066875

Status : Not Answered

Chosen Option : --

Q.3 दिए गए मुहावरे में रेखांकित अंश के स्थान पर सबसे उपयुक्त विकल्प कौन-सा होगा?  
'छठी का मिठाई याद आना।'

- Ans
- 1. दूध
  - 2. चीनी
  - 3. नमक
  - 4. पकवान

Question ID : 26433066743  
Status : Not Answered  
Chosen Option : --

Q.4 जिसका तेज निकल गया है।

दिए गए वाक्यांश के लिए एक शब्द होगा-

- Ans
- 1. तेजोमय
  - 2. तेजस्वी
  - 3. तेजोदीप्त
  - 4. निस्तेज

Question ID : 26433070056  
Status : Not Answered  
Chosen Option : --

Q.5 दिए गए वाक्य में रेखांकित अंश के स्थान पर सबसे उपयुक्त विकल्प कौन-सा होगा?

गोली लगते ही उनका प्राण उड़ गया।

- Ans
- 1. उनकी प्राण उड़ गई।
  - 2. उनके प्राण उड़ गए।
  - 3. उनको प्राण उड़ गया।
  - 4. उनके प्राण उड़ गई।

Question ID : 26433079187  
Status : Not Answered  
Chosen Option : --

Q.6 निम्नलिखित विकल्पों में से 'जो आदर करने योग्य हो' वाक्यांश के लिए एक सार्थक शब्द क्या होगा ?

- Ans
- 1. आशावान
  - 2. आदरणीय
  - 3. शक्तिमान
  - 4. ताकतवर

Question ID : 26433062467  
Status : Not Answered  
Chosen Option : --



Q.7 माता- पिता पर आदर करना चाहिए। इस वाक्य में अशुद्ध शब्द है-

- Ans
- 1. चाहिए
  - 2. माता- पिता
  - 3. आदर
  - 4. पर

Question ID : 26433091303  
Status : Not Answered  
Chosen Option : --

Q.8 सामने शेर को आते देखकर शिखर के \_\_\_\_\_ खड़े हो गये।  
रिक्त स्थान की पूर्ति उचित मुहावरे द्वारा कीजिए।

- Ans
- 1. पैर
  - 2. रोंगटे
  - 3. बाल
  - 4. मित्र

Question ID : 26433062613  
Status : Not Answered  
Chosen Option : --

Q.9 निम्नलिखित में से शुद्ध वाक्य है-

- Ans
- 1. बुरी खबर कान- कान फैल जाती है।
  - 2. बुरी खबर कानू- कानू फैल जाती है।
  - 3. बुरी खबर कानों- कान फैल जाती है।
  - 4. बुरी खबर कानो- हाथ फैल जाती है।

Question ID : 26433066847  
Status : Not Answered  
Chosen Option : --

Q.10 वाक्य में रेखांकित शब्द के स्थान पर पर्यायवाची शब्द को लिखकर वाक्य को पूरा कीजिए।

पति-पत्नी के झगड़े का हेतु क्या हो सकता है?

- Ans
- 1. औचित्य
  - 2. महत्त्व
  - 3. विषय
  - 4. कारण

Question ID : 26433065697  
Status : Not Answered  
Chosen Option : --

Q.11 विकल्पों में से उचित अवधिवाचक क्रिया विशेषण चयन कीजिए।

- Ans  1. वह, कोई  
 2. नित्य, लगातार  
 3. हर रोज, हर बार  
 4. इधर, उधर

Question ID : 26433063049  
Status : Not Answered  
Chosen Option : --

Q.12 सज्जन का सत्कार होता है और दुर्जन का \_\_\_\_\_।

सत्कार के विलोम शब्द से वाक्य पूर्ण करें।

- Ans  1. तिरस्कार  
 2. स्वागत  
 3. अपमान  
 4. परिष्कार

Question ID : 26433080876  
Status : Not Answered  
Chosen Option : --

Q.13 भाववाचक संज्ञा शब्द से प्रयुक्त गलत वाक्य को पढ़कर विकल्पों में से शुद्ध वाक्य छाँटिए।

उनकी जवान चला गया पर अहंकार गया नहीं।

- Ans  1. उनके जवान चले गए पर अहंकार गया नहीं।  
 2. उनकी जवानी चली गयी पर अहंकार गया नहीं।  
 3. उनका जवानी चली गयी पर अहंकार गया नहीं।  
 4. उनके जवानी चला गया पर अहंकार गया नहीं।

Question ID : 26433063031  
Status : Not Answered  
Chosen Option : --

Q.14 भारतीय सभ्यता में अलंकार का विशेष महत्त्व है।

निम्न में से कौन-सा शब्द, वाक्य में प्रयुक्त 'अलंकार' शब्द का पर्यायवाची शब्द नहीं है?

- Ans  1. सज्जा  
 2. आभूषण  
 3. छंद  
 4. सजावट

Question ID : 26433080860  
Status : Not Answered  
Chosen Option : --

Q.15 'मूर्ख' के समानार्थी शब्द से वाक्य पूर्ण कीजिए।

\_\_\_\_\_ व्यक्ति में समझने की शक्ति का नितांत अभाव है।

- Ans  1. अनजान  
 2. मूढ़  
 3. अनभिज्ञ  
 4. अचर

Question ID : 26433063097

Status : Not Answered

Chosen Option : --

**Comprehension:**

निम्नलिखित गद्यांश में से कुछ शब्द हटा दिए गए हैं। दिए गए विकल्पों की सहायता से रिक्त स्थानों की पूर्ति कीजिए। प्रत्येक संख्या के लिए उपयुक्त विकल्प का चयन कीजिए।

राजप्पा ने नागराजन के 1. \_\_\_\_\_ को देखने की 2. \_\_\_\_\_ कभी नहीं प्रकट की। लेकिन जब 3. \_\_\_\_\_ लड़के उसे देख रहे होते तो वह नीची 4. \_\_\_\_\_ से देख लेता। सचमुच नागराजन का अलबम 5. \_\_\_\_\_ प्यारा था।

SubQuestion No : 16

Q.16 रिक्त स्थान 1 की पूर्ति के लिए सर्वाधिक उपयुक्त विकल्प का चयन कीजिए।

- Ans  1. अलबम  
 2. श्रेय  
 3. किताब  
 4. कार

Question ID : 26433079603

Status : Not Answered

Chosen Option : --

**Comprehension:**

निम्नलिखित गद्यांश में से कुछ शब्द हटा दिए गए हैं। दिए गए विकल्पों की सहायता से रिक्त स्थानों की पूर्ति कीजिए। प्रत्येक संख्या के लिए उपयुक्त विकल्प का चयन कीजिए।

राजप्पा ने नागराजन के 1. \_\_\_\_\_ को देखने की 2. \_\_\_\_\_ कभी नहीं प्रकट की। लेकिन जब 3. \_\_\_\_\_ लड़के उसे देख रहे होते तो वह नीची 4. \_\_\_\_\_ से देख लेता। सचमुच नागराजन का अलबम 5. \_\_\_\_\_ प्यारा था।

SubQuestion No : 17

Q.17 रिक्त स्थान 2 की पूर्ति के लिए सर्वाधिक उपयुक्त विकल्प का चयन कीजिए।

- Ans  1. हुड़क  
 2. इच्छा  
 3. लत  
 4. प्रसन्नता

Question ID : 26433079604

Status : Not Answered

Chosen Option : --

**Comprehension:**

निम्नलिखित गद्यांश में से कुछ शब्द हटा दिए गए हैं। दिए गए विकल्पों की सहायता से रिक्त स्थानों की पूर्ति कीजिए। प्रत्येक संख्या के लिए उपयुक्त विकल्प का चयन कीजिए।

राजप्पा ने नागराजन के 1. \_\_\_\_\_ को देखने की 2. \_\_\_\_\_ कभी नहीं प्रकट की। लेकिन जब 3. \_\_\_\_\_ लड़के उसे देख रहे होते तो वह नीची 4. \_\_\_\_\_ से देख लेता। सचमुच नागराजन का अलबम 5. \_\_\_\_\_ प्यारा था।

**SubQuestion No : 18**

Q.18 रिक्त स्थान 3 की पूर्ति के लिए सर्वाधिक उपयुक्त विकल्प का चयन कीजिए।

- Ans
- 1. पहले
  - 2. दूसरे
  - 3. तीसरे
  - 4. चौथे

Question ID : 26433079605

Status : Not Answered

Chosen Option : --

**Comprehension:**

निम्नलिखित गद्यांश में से कुछ शब्द हटा दिए गए हैं। दिए गए विकल्पों की सहायता से रिक्त स्थानों की पूर्ति कीजिए। प्रत्येक संख्या के लिए उपयुक्त विकल्प का चयन कीजिए।

राजप्पा ने नागराजन के 1. \_\_\_\_\_ को देखने की 2. \_\_\_\_\_ कभी नहीं प्रकट की। लेकिन जब 3. \_\_\_\_\_ लड़के उसे देख रहे होते तो वह नीची 4. \_\_\_\_\_ से देख लेता। सचमुच नागराजन का अलबम 5. \_\_\_\_\_ प्यारा था।

**SubQuestion No : 19**

Q.19 रिक्त स्थान 4 की पूर्ति के लिए सर्वाधिक उपयुक्त विकल्प का चयन कीजिए।

- Ans
- 1. आँखों
  - 2. हथेली
  - 3. आवाज
  - 4. पाँव

Question ID : 26433079606

Status : Not Answered

Chosen Option : --

**Comprehension:**

निम्नलिखित गद्यांश में से कुछ शब्द हटा दिए गए हैं। दिए गए विकल्पों की सहायता से रिक्त स्थानों की पूर्ति कीजिए। प्रत्येक संख्या के लिए उपयुक्त विकल्प का चयन कीजिए।

राजप्पा ने नागराजन के 1. \_\_\_\_\_ को देखने की 2. \_\_\_\_\_ कभी नहीं प्रकट की। लेकिन जब 3. \_\_\_\_\_ लड़के उसे देख रहे होते तो वह नीची 4. \_\_\_\_\_ से देख लेता। सचमुच नागराजन का अलबम 5. \_\_\_\_\_ प्यारा था।

**SubQuestion No : 20**

**Q.20** रिक्त स्थान 5 की पूर्ति के लिए सर्वाधिक उपयुक्त विकल्प का चयन कीजिए।

- Ans**
- 1. ठीक
  - 2. साधारण
  - 3. हलका
  - 4. बेहद

Question ID : 26433079607

Status : Not Answered

Chosen Option : --

KD Job Updates

# Constable GD in CAPFs SSF Rifleman GD in Assam Rifles and Sepoy in NCB Examination 2022

Roll Number	KD Job Updates
Candidate Name	KD Job Updates
Venue Name	iON Digital Zone IDZ Trichy II
Exam Date	31/01/2023
Exam Time	11:45 AM - 12:45 PM
Subject	Constable GD Examination 2022

Section : Part-A-General Intelligence and Reasoning

Q.1 In a code language, 'dark colors' is coded as 'yu nu', 'days are bright' is coded as 'wu tu ku', 'nights are dark' is coded as 'ku nu pu', 'paint bright' is coded as 'wu ru'. What is the code for the word 'nights'?

- Ans
- 1. nu
  - 2. pu
  - 3. yu
  - 4. ku

Question ID : 26433082275  
Status : Answered  
Chosen Option : 2

Q.2 Select the option that is related to the fifth letter-cluster in the same way as the second letter-cluster is related to the first letter-cluster and the fourth letter-cluster is related to the third letter-cluster.

FVL : MXI :: PCJ : KES :: DKN : ?

- Ans
- 1. PMH
  - 2. PNH
  - 3. OMG
  - 4. ONG

Question ID : 26433057889  
Status : Answered  
Chosen Option : 3

Q.3 If '+' means '÷', '-' means '+', 'x' means '-' and '÷' means 'x', what will be the value of the following expression?

$[{(49 \times 12) - (6 \div 2)} + (4 - 3)] \div 5$

- Ans
- 1. 10
  - 2. 35
  - 3. 2
  - 4. 1

Question ID : 26433086259  
Status : Answered  
Chosen Option : 2

Q.4 In a certain code language,  
 'A + B' means 'A is the brother of B',  
 'A - B' means 'A is the mother of B',  
 'A × B' means 'A is the father of B' and  
 'A ÷ B' means 'A is the son of B'.  
 If  $P \times Q \times R + D \div S - B$ , then which of the following statements is NOT correct?

- Ans
- 1. R is B's brother.
  - 2. Q is B's father.
  - 3. P is B's mother's father.
  - 4. R is P's son's son.

Question ID : 26433070374  
 Status : Answered  
 Chosen Option : 3

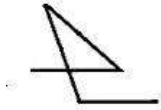
Q.5 Select the correct mirror image of the given pattern when the mirror is placed at MN as shown.



- Ans
- 1. 8JAIT16qE
  - 2. 9 parTIAL8
  - 3. JA8IT16qE
  - 4. T16qEIAL8

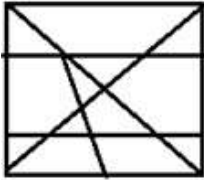
Question ID : 26433082902  
 Status : Answered  
 Chosen Option : 1

Q.6 Select the option figure in which the given figure is embedded as its part (rotation is not allowed).

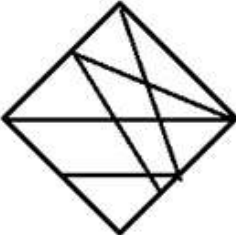


Ans

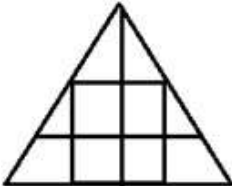
✓ 1.



✗ 2.



✗ 3.



✗ 4.



Question ID : 26433069539

Status : Answered

Chosen Option : 1

Q.7 Which letter-cluster will replace the question mark (?) to complete the given series?  
ETAX, FRDT, GPGP, ?, ILMH

Ans ✓ 1. HN JL

✗ 2. HMJI

✗ 3. HNKM

✗ 4. HMNI

Question ID : 26433068573

Status : Answered

Chosen Option : 1



Q.8 Which of the following numbers will replace the question mark (?) in the given series?  
9, 35, 91, 189, 341, ?

- Ans  1. 1210  
 2. 497  
 3. 559  
 4. 713

Question ID : 26433082001

Status : Not Attempted and  
Marked For Review

Chosen Option : --

Q.9 Select the letter-cluster from among the given options that can replace the question mark (?) in the following series.  
BELF, WZTN, RUBV, ?, HKRL

- Ans  1. MGDV  
 2. TJLS  
 3. TBDE  
 4. MPJD

Question ID : 26433074755

Status : Answered

Chosen Option : 4

Q.10 Select the option that is related to the fourth term in the same way as the first term is related to the second term and the fifth term is related to the sixth term.  
6 : 109 :: ? : 257 :: 10 : 501

- Ans  1. 8  
 2. 12  
 3. 11  
 4. 9

Question ID : 26433069088

Status : Not Attempted and  
Marked For Review

Chosen Option : --

Q.11 Five people E, F, G, H and I are sitting in a straight row, facing north. There are only three people sitting to the left of H and only three people sitting to the right of F. E sits on the immediate left of F and only two people sit on the left of G. Who is sitting on the extreme right end of the row?

- Ans  1. G  
 2. I  
 3. F  
 4. E

Question ID : 26433056048

Status : Answered

Chosen Option : 2

Q.12 Which of the following numbers will replace the question marks (?) in the given series?

119, 117, 114, 109, ?, 91, ?, 61

- Ans
- 1. 100, 74
  - 2. 107, 68
  - 3. 101, 80
  - 4. 102, 78

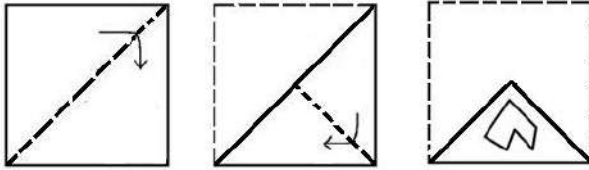
Question ID : 26433070223

Status : Answered

Chosen Option : 4

KD Job Updates

**Q.13** The following figures show the sequence of folding a piece of paper. The last figure shows the manner in which the folded paper has been cut. Select the figure which would most closely resemble the unfolded form of the paper.



Ans

✗ 1.



✗ 2.



✓ 3.



✗ 4.



Question ID : 26433087094  
 Status : Answered  
 Chosen Option : 3

Q.14 Three statements are given followed by three conclusions numbered I, II and III. Assuming the statements to be true, even if they seem to be at variance with commonly known facts, decide which of the conclusions logically follow(s) from the statements.

Statements:

All gels are boats.

All pumps are boats.

All boats are ships.

Conclusions:

I. All pumps are ships.

II. All ships are gels.

III. Some ships are pumps.

- Ans
- 1. Only conclusions I and II follow
  - 2. All conclusions follow
  - 3. Only conclusions I and III follow
  - 4. Only conclusions II and III follow

Question ID : 26433082305

Status : Answered

Chosen Option : 3

Q.15 Which of the mathematical signs should be interchanged in the below equation to make it mathematically correct?

$$17 + 112 \div 16 - 8 \times 64 = 175$$

- Ans
- 1.  $\div$  and  $\times$
  - 2.  $+$  and  $\div$
  - 3.  $+$  and  $\times$
  - 4.  $+$  and  $-$

Question ID : 264330117527

Status : Not Attempted and Marked For Review

Chosen Option : --

Q.16 Which option represents the correct order of the given words as they would appear in the English dictionary?

1 eagle

2 eager

3 eastern

4 earth

5 earring

- Ans
- 1. 2,5,1,3,4
  - 2. 2,5,1,4,3
  - 3. 2,1,5,4,3
  - 4. 2,1,5,3,4

Question ID : 26433069316

Status : Answered

Chosen Option : 3

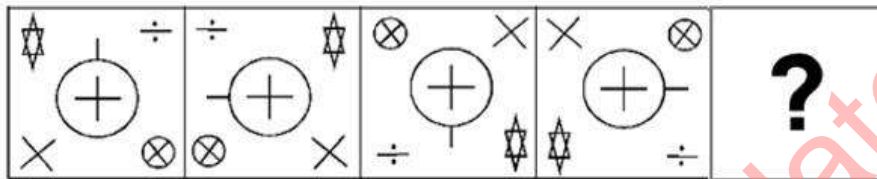
**Q.17** Select the option that is related to the third word in the same way as the second word is related to the first word.  
 (The words must be considered as meaningful English words and must not be related to each other based on the number of letters/number of consonants/vowels in the word)

New Delhi : India :: Kyiv : ?

- Ans
- 1. Russia
  - 2. Mongolia
  - 3. Moldova
  - 4. Ukraine

Question ID : 26433079477  
 Status : Answered  
 Chosen Option : 4

**Q.18** Select the figure from among the given options that can replace the question mark (?) in the following series.



Ans

- 1.
- 2.
- 3.
- 4.

Question ID : 26433080493  
 Status : Answered  
 Chosen Option : 1

Q.19 Six students Kabir, Messi, Ronaldo, Sharon, Raj and Moosa are sitting around a circular table facing the centre. Moosa is sitting second to the left of Sharon. Kabir is sitting second to the left of Moosa. Ronaldo is sitting to the immediate left of Kabir. Raj is sitting to the immediate left of Moosa. Messi is an immediate neighbour to Sharon and Moosa. Who is sitting between Ronaldo and Messi?

- Ans
- 1. Raj
  - 2. Moosa
  - 3. Kabir
  - 4. Sharon

Question ID : 26433081786  
Status : Answered  
Chosen Option : 4

Q.20 In a code language, 'MORBID' is written as '61' and 'PARIAH' is written as '53'. How will 'RAVISHED' be written in that language?

- Ans
- 1. 85
  - 2. 86
  - 3. 88
  - 4. 96

Question ID : 26433068937  
Status : Answered  
Chosen Option : 2

Section : Part-B-General Knowledge and General awareness

Q.1 Bank rate is the rate at which:

- Ans
- 1. Central Bank borrows loan from Government
  - 2. Commercial banks lend loan to Central bank
  - 3. Commercial banks lend loan to Government
  - 4. Central bank lends loan to commercial banks.

Question ID : 264330115314  
Status : Not Attempted and Marked For Review  
Chosen Option : --

Q.2 The term Stumping is related to which of the following sports?

- Ans
- 1. Cricket
  - 2. Baseball
  - 3. Tennis
  - 4. Basketball

Question ID : 264330116269  
Status : Answered  
Chosen Option : 1

**Q.3** Who among the following was elected as Member of Rajya Sabha from Himachal Pradesh, India in March 2022?

- Ans
- 1. Jitendra Singh
  - 2. K. G. Kenye
  - 3. Oommen Chandy
  - 4. Sikander Kumar

Question ID : 264330114947  
Status : Not Answered  
Chosen Option : --

**Q.4** Which term did Robert Hooke coin when he observed slices of cork, under a simple magnifying device?

- Ans
- 1. stall
  - 2. brick
  - 3. jail
  - 4. cell

Question ID : 264330115234  
Status : Answered  
Chosen Option : 4

**Q.5** What is the name of Arunachal Pradesh's first greenfield airport?

- Ans
- 1. Kalyani Airport
  - 2. Rajkot Airport
  - 3. Donyi Polo Airport
  - 4. Sindhudurg Airport

Question ID : 264330115561  
Status : Not Answered  
Chosen Option : --

**Q.6** Which is one of the bi-product formed when sodium sulphate reacts with barium chloride?

- Ans
- 1. Sodium chloride
  - 2. Barium oxide
  - 3. Barium hydroxide
  - 4. Sodium oxide

Question ID : 26433091478  
Status : Not Answered  
Chosen Option : --

Q.7 Which of the following folk-dance forms is NOT predominantly performed in the Indian state of Maharashtra?

- Ans  1. Tamasha  
 2. Rouff  
 3. Lavani  
 4. Koli

Question ID : 26433071485  
Status : Not Answered  
Chosen Option : --

Q.8 Industrial development is a precondition for \_\_\_\_\_ of unemployment.

- Ans  1. acceleration  
 2. eradication  
 3. encouragement  
 4. addition

Question ID : 264330115411  
Status : Not Answered  
Chosen Option : --

Q.9 Before being elected as the 15th President of India, Draupadi Murmu was the Governor of which of the following states?

- Ans  1. Orissa  
 2. West Bengal  
 3. Jharkhand  
 4. Bihar

Question ID : 264330115017  
Status : Answered  
Chosen Option : 2

Q.10 Sharad Purnima is associated with the Goddess \_\_\_\_\_ in some parts of India.

- Ans  1. Gauri  
 2. Parvati  
 3. Sita  
 4. Lakshmi

Question ID : 264330115123  
Status : Not Answered  
Chosen Option : --



Q.11 How many rulers of Dakshinapatha were defeated by Samudragupta?

- Ans
- 1. 3
  - 2. 10
  - 3. 12
  - 4. 8

Question ID : 26433085219  
Status : Not Answered  
Chosen Option : --

Q.12 Who was the first Indian to receive the medal and Diploma of the French association Archives Internationales de la Danse?

- Ans
- 1. Amala Akkineni
  - 2. Mrinalini Sarabhai
  - 3. Jatin Goswami
  - 4. Alarmel Valli

Question ID : 264330115855  
Status : Not Answered  
Chosen Option : --

Q.13 \_\_\_\_\_ and \_\_\_\_\_ formed the Swaraj Party within the Congress to argue for a return to council politics.

- Ans
- 1. Chittaranjan Das and Motilal Nehru
  - 2. Chittaranjan Das and Jawaharlal Nehru
  - 3. Lokmanya Tilak and Motilal Nehru
  - 4. Lokmanya Tilak and Jawaharlal Nehru

Question ID : 26433090586  
Status : Not Answered  
Chosen Option : --

Q.14 In badminton singles, at the beginning of the game (0-0) and when the server's score is even, the server serves from which side of the court?

- Ans
- 1. Any service court
  - 2. Cannot serve
  - 3. Right service court
  - 4. Left service side

Question ID : 264330115927  
Status : Not Answered  
Chosen Option : --

**Q.15** Although there was a category of industries left to the private sector, the sector was kept under state control through a system of licenses. No new industry was allowed unless a license was obtained from the government.  
The above lines are about which of the following?

- Ans  1. IPR-1956  
 2. IPR-1952  
 3. IPR-1951  
 4. IPR-1958

Question ID : 26433054775  
Status : Not Answered  
Chosen Option : --

**Q.16** According to the 2011 Census of India, the state of Bihar was the \_\_\_\_\_ most populated state of India .

- Ans  1. fifth  
 2. fourth  
 3. second  
 4. third

Question ID : 264330116064  
Status : Not Answered  
Chosen Option : --

**Q.17** According to which of the following Articles of the Constitution of India can the Supreme Court review its own judgements or orders?

- Ans  1. Article 137  
 2. Article 134  
 3. Article 147  
 4. Article 120

Question ID : 26433086839  
Status : Not Answered  
Chosen Option : --

**Q.18** Make in India scheme was launched by Government of India in year \_\_\_\_\_.

- Ans  1. 2019  
 2. 2014  
 3. 2018  
 4. 2016

Question ID : 264330116201  
Status : Not Answered  
Chosen Option : --

**Q.19 What does Part IVA of the Indian Constitutions deal with?**

- Ans
- 1. Fundamental Rights
  - 2. Directive Principles of State Policy
  - 3. Moral Duty of Police
  - 4. Fundamental Duties

Question ID : 264330115632  
Status : Not Answered  
Chosen Option : --

**Q.20 Which rocks are formed from solidification and cooling of magma?**

- Ans
- 1. Chemical Sedimentary Rocks
  - 2. Metamorphic rocks
  - 3. Sedimentary rocks
  - 4. Igneous rocks

Question ID : 264330115997  
Status : Not Answered  
Chosen Option : --

Section : Part-C-Elementary Mathematics

**Q.1 Tina puts Rs. 48000 in a bank account. She takes it out 6 years later, it is now worth Rs. 60000. The percent increase is:**

- Ans
- 1. 12 percent
  - 2. 25 percent
  - 3. 28 percent
  - 4. 22 percent

Question ID : 264330116805  
Status : Not Answered  
Chosen Option : --

**Q.2 If the price of petrol is increased by 25 percent, then how much should a person decrease the consumption to keep the expenditure same?**

- Ans
- 1. 20 percent
  - 2. 18 percent
  - 3. 23 percent
  - 4. 21 percent

Question ID : 26433079849  
Status : Not Answered  
Chosen Option : --

**Q.3** A shopkeeper buys some fruits at a discount of 10% on the marked price. For selling the item he increases the marked price. If he wants to get a profit of 25% after allowing a discount of 15%, then by what percentage should his marked price be greater than the original marked price? (Correct to a nearest whole number)

- Ans  1. 32 Percent  
 2. 25 Percent  
 3. 15 Percent  
 4. 10 Percent

Question ID : 26433081569  
Status : Not Answered  
Chosen Option : --

**Q.4** The average age of a certain number of students in a college club is 20 years. Later, 27 new students, whose average age is 22 years, joined the club. 12 students, whose average age is 19 years, left the club. As a result of this change, the average age of all the students increases by 2 years. What is the present number of students in the club?

- Ans  1. 15  
 2. 25  
 3. 42  
 4. 33

Question ID : 26433081064  
Status : Not Answered  
Chosen Option : --

**Q.5** What is the length of the longest pole that can be placed in a room 12 m long, 8 m broad and 3 m high (correct up to 2 decimal places)?

- Ans  1. 18.36 m  
 2. 20.58 m  
 3. 14.73 m  
 4. 16.25 m

Question ID : 26433083062  
Status : Not Answered  
Chosen Option : --

**Q.6** 20 women can finish a piece of work in 16 days and 16 men can finish it in 15 days. What is the ratio of the working efficiency of a man and a woman?

- Ans  1. 3 : 2  
 2. 5 : 4  
 3. 4 : 3  
 4. 6 : 5

Question ID : 26433080363  
Status : Not Answered  
Chosen Option : --

**Q.7** An overcoat is sold for Rs.1,260 at successive discounts of 16% and 25%. Find the marked price of the overcoat.

- Ans
- 1. Rs.1,900
  - 2. Rs.1,800
  - 3. Rs.2,100
  - 4. Rs.2,000

Question ID : 26433082974  
Status : Not Answered  
Chosen Option : --

**Q.8** A hemispherical bowl is made of thick steel, whose thickness is 0.50 cm. If the outer diameter of the bowl is 43 cm, then the volume of the bowl is:

- Ans
- 1. 19404 cm<sup>3</sup>
  - 2. 87318 cm<sup>3</sup>
  - 3. 58212 cm<sup>3</sup>
  - 4. 29106 cm<sup>3</sup>

Question ID : 26433072978  
Status : Not Answered  
Chosen Option : --

**Q.9** The cost price of 1 kg of sugar is Rs.50. A shopkeeper sells it at Rs.55 per kg. In order to raise his profit, the shopkeeper weighs only 900 grams in place of 1 kg. Determine the percentage profit (Approximate) earned by the shopkeeper.

- Ans
- 1. 28%
  - 2. 12%
  - 3. 10%
  - 4. 22%

Question ID : 26433071313  
Status : Not Answered  
Chosen Option : --

**Q.10** A girl walks to a park situated 350 m from her house. It took her 3 mins to reach the park and 4 mins to return. What is the average speed of the girl (in km/h)?

- Ans
- 1. 4 km/h
  - 2. 6.5 km/h
  - 3. 6 km/h
  - 4. 5 km/h

Question ID : 26433080365  
Status : Not Answered  
Chosen Option : --

Q.11 P and Q together can complete a work in 21 days. Q alone can complete it in 84 days. If efficiency of Q becomes double, then in how many days approximately will P and Q together complete the work?

- Ans
- 1. 40 days
  - 2. 37 days
  - 3. 17 days
  - 4. 33 days

Question ID : 264330116885  
Status : Not Answered  
Chosen Option : --

Q.12 2 numbers differ by 9 and their product is 2430. Find the HCF of the numbers.

- Ans
- 1. 12
  - 2. 9
  - 3. 3
  - 4. 6

Question ID : 264330116664  
Status : Not Answered  
Chosen Option : --

Q.13 Which relation is correct for 6 : 11 and 8 : 9?

- Ans
- 1.  $6 : 11 \geq 8 : 9$
  - 2.  $6 : 11 = 8 : 9$
  - 3.  $6 : 11 > 8 : 9$
  - 4.  $8 : 9 > 6 : 11$

Question ID : 26433074930  
Status : Not Answered  
Chosen Option : --

Q.14 If  $a + b : b + c : c + a = 2 : 3 : 5$  and  $a + b + c = 20$ , then the value of c is:

- Ans
- 1. 10
  - 2. 2
  - 3. 12
  - 4. 5

Question ID : 26433073022  
Status : Not Answered  
Chosen Option : --

**Q.15** The least multiple of 7, which leaves a remainder of 4, when divided by 6, 9, 15 and 18 is:

- Ans  1. 364  
 2. 357  
 3. 371  
 4. 350

Question ID : 26433082348  
Status : Not Answered  
Chosen Option : --

**Q.16** A man rows his boat 525 m in 250 seconds along the stream and returns in  $7\frac{1}{2}$  minutes. The rowing speed in still water (in km/h) is:

- Ans  1. 5.88 km/h  
 2. 6.66 km/h  
 3. 5.42 km/h  
 4. 4.88 km/h

Question ID : 26433074997  
Status : Not Answered  
Chosen Option : --

**Q.17** If the difference between the compound interest, compounding annually and the simple interest on a certain sum of money at 5% per annum for 3 years is Rs.183, then what is the sum of money invested?

- Ans  1. Rs.20,000  
 2. Rs.28,000  
 3. Rs.24,000  
 4. Rs.16,000

Question ID : 26433075686  
Status : Not Answered  
Chosen Option : --

**Q.18** A deposited a total of Rs.25,500 in a bank in the names of his grandsons P and Q who are presently 13 years and 14 years old, respectively. He divided his money in such a way that they get equal amounts upon attaining the age of 25 years. If the bank gives interest at a rate of 4% p.a. compounded annually, then how much has been deposited in Q's name?

- Ans  1. Rs.12,000  
 2. Rs.14,000  
 3. Rs.13,000  
 4. Rs.12,500

Question ID : 26433065290  
Status : Not Answered  
Chosen Option : --

Q.19 The speed of a boat along and against the current are 16 km/h and 12 km/h, respectively. The speed of the current is:

- Ans  1. 2 km/h  
 2. 14 km/h  
 3. 8 km/h  
 4. 6 km/h

Question ID : 26433066318  
Status : Not Answered  
Chosen Option : --

Q.20 A person buys 15 pens for ₹100, and sells them at 13 pens for ₹100. What is the gain percentage?

- Ans  1.  $13\frac{4}{13}$  percent  
 2.  $13\frac{3}{13}$  percent  
 3.  $15\frac{5}{13}$  percent  
 4.  $15\frac{3}{13}$  percent

Question ID : 26433079862  
Status : Not Answered  
Chosen Option : --

Section : Part-D-English

Q.1 Select the most appropriate synonym of the word given in brackets to fill in the blank.

The supervisor is \_\_\_\_\_ (ruthless) in his behaviour with the workers.

- Ans  1. merciless  
 2. senseless  
 3. shameless  
 4. careless

Question ID : 26433070463  
Status : Answered  
Chosen Option : 1

Q.2 Select the most appropriate synonym of the given word.

Esteem

- Ans  1. Excuse  
 2. Abuse  
 3. Ridicule  
 4. Respect

Question ID : 26433074046  
Status : Answered  
Chosen Option : 2



Q.3 Select the most appropriate meaning of the underlined idiom in the given sentence.

It is hard to believe that many smokers didn't go cold turkey even after they got lung cancer.

- Ans
- 1. Losing sensory inputs
  - 2. Dead
  - 3. Quite addictive or dangerous behaviour
  - 4. Withered

Question ID : 26433072088  
Status : Answered  
Chosen Option : 3

Q.4 The following sentence has been split into four segments. Identify the segment that contains a grammatical error.

Her bookstore flourished / because / she picks / a good location.

- Ans
- 1. Her bookstore flourished
  - 2. because
  - 3. a good location
  - 4. she picks

Question ID : 26433088095  
Status : Answered  
Chosen Option : 4

Q.5 Select the most appropriate ANTONYM of the underlined word to fill in the blank.

Welter was an honest worker, whereas Rodriguez was \_\_\_\_\_.

- Ans
- 1. erupt
  - 2. timid
  - 3. corrupt
  - 4. candid

Question ID : 26433091845  
Status : Answered  
Chosen Option : 3

Q.6 Choose the INCORRECTLY spelt word.

- Ans
- 1. Falcon
  - 2. Tailor
  - 3. Talon
  - 4. Palour

Question ID : 26433084609  
Status : Answered  
Chosen Option : 4

Q.7 Select the most appropriate option that can substitute the underlined segment in the given sentence.

They took a while to establish the threat.

- Ans  1. recognise the threat  
 2. manifest the threat  
 3. negotiate the threat  
 4. move the threat

Question ID : 26433096192  
Status : Answered  
Chosen Option : 4

Q.8 Select the most appropriate ANTONYM of the given word.

Dispel

- Ans  1. Scatter  
 2. Remove  
 3. Disburse  
 4. Integrate

Question ID : 26433073868  
Status : Answered  
Chosen Option : 4

Q.9 A part of the given sentence which has been underlined may contain a spelling error. Select the option that correctly rectifies the spelling error. If there is no error, select 'No error'.

Some of the islands in the Bay of Bengal are still inaccesible to the scientists.

- Ans  1. Inaccessible  
 2. Inaccesible  
 3. Inacceesible  
 4. No error

Question ID : 26433071788  
Status : Answered  
Chosen Option : 1

Q.10 Select the most appropriate synonym of the given word.

Blunt

- Ans  1. Cheerful  
 2. Dull  
 3. Valiant  
 4. Sharp

Question ID : 26433084680  
Status : Answered  
Chosen Option : 4

Q.11 Choose the option that can substitute the underlined segment correctly and complete the meaning of the sentence.

Meenakshi looks very beautiful in her blue dress.

- Ans
- 1. Admiring
  - 2. Lavish
  - 3. Gorgeous
  - 4. Lively

Question ID : 26433088880  
Status : Answered  
Chosen Option : 3

Q.12 Select the most appropriate option that can substitute the underlined segment in the given sentence.

The pleasure created by the poet was primarily until his exaggerated descriptions.

- Ans
- 1. below his exaggerated descriptions
  - 2. beside his exaggerated descriptions
  - 3. off his exaggerated descriptions
  - 4. through his exaggerated descriptions

Question ID : 26433089311  
Status : Not Attempted and Marked For Review  
Chosen Option : --

Q.13 Select the most appropriate ANTONYM of the given word.

Arrogant

- Ans
- 1. Humble
  - 2. Haughty
  - 3. Superior
  - 4. Scornful

Question ID : 26433086373  
Status : Answered  
Chosen Option : 1

Q.14 Fill in the blanks with the correct homophone.

His eyes \_\_\_\_\_ up with fascination when he saw his idol standing in front of him.

- Ans
- 1. lye
  - 2. lit
  - 3. lite
  - 4. life

Question ID : 26433089751  
Status : Answered  
Chosen Option : 2

**Q.15** Select the most appropriate idiom for the underlined segment in the given sentence.

Without any question, Naresh is my good friend.

- Ans
- 1. A good deal of
  - 2. Care a hang
  - 3. Account for
  - 4. Beyond a doubt

Question ID : 26433072816

Status : Answered

Chosen Option : 1

**Comprehension:**

In the following passage, some words have been deleted. Read the passage carefully and select the most appropriate option to fill in each blank.

The automobile industry is one of the (1) \_\_\_\_\_ industries at the global level. It plays a crucial role in the development of the global economy because of the high revenues and increased customer demands. The automobile industry helps to (2) \_\_\_\_\_ economic development of the country; therefore, it is widely recognised as a major economic sector. The automobile industry consists of multiple companies (3) \_\_\_\_\_ in car manufacturing, as well as the ones involved in marketing and distribution of automobile products, such as cars, buses, vans, trucks, motorcycles, mopeds and (4) \_\_\_\_\_ bicycles. The global automobile industry incorporates several large car manufacturers' blocs that work (5) \_\_\_\_\_ at the global level.

**SubQuestion No : 16**

**Q.16** Select the most appropriate option to fill in blank number 1.

- Ans
- 1. jumping
  - 2. leading
  - 3. shortening
  - 4. moving

Question ID : 26433089756

Status : Answered

Chosen Option : 2

**Comprehension:**

In the following passage, some words have been deleted. Read the passage carefully and select the most appropriate option to fill in each blank.

The automobile industry is one of the (1) \_\_\_\_\_ industries at the global level. It plays a crucial role in the development of the global economy because of the high revenues and increased customer demands. The automobile industry helps to (2) \_\_\_\_\_ economic development of the country; therefore, it is widely recognised as a major economic sector. The automobile industry consists of multiple companies (3) \_\_\_\_\_ in car manufacturing, as well as the ones involved in marketing and distribution of automobile products, such as cars, buses, vans, trucks, motorcycles, mopeds and (4) \_\_\_\_\_ bicycles. The global automobile industry incorporates several large car manufacturers' blocs that work (5) \_\_\_\_\_ at the global level.

**SubQuestion No : 17**

**Q.17 Select the most appropriate option to fill in blank number 2.**

- Ans  1. release  
 2. block  
 3. foster  
 4. arrest

Question ID : 26433089757

Status : Answered

Chosen Option : 1

**Comprehension:**

In the following passage, some words have been deleted. Read the passage carefully and select the most appropriate option to fill in each blank.

The automobile industry is one of the (1) \_\_\_\_\_ industries at the global level. It plays a crucial role in the development of the global economy because of the high revenues and increased customer demands. The automobile industry helps to (2) \_\_\_\_\_ economic development of the country; therefore, it is widely recognised as a major economic sector. The automobile industry consists of multiple companies (3) \_\_\_\_\_ in car manufacturing, as well as the ones involved in marketing and distribution of automobile products, such as cars, buses, vans, trucks, motorcycles, mopeds and (4) \_\_\_\_\_ bicycles. The global automobile industry incorporates several large car manufacturers' blocs that work (5) \_\_\_\_\_ at the global level.

**SubQuestion No : 18**

**Q.18 Select the most appropriate option to fill in blank number 3.**

- Ans  1. unspecialised  
 2. specialised  
 3. simplified  
 4. non-simplified

Question ID : 26433089758

Status : Answered

Chosen Option : 2

**Comprehension:**

In the following passage, some words have been deleted. Read the passage carefully and select the most appropriate option to fill in each blank.

The automobile industry is one of the (1) \_\_\_\_\_ industries at the global level. It plays a crucial role in the development of the global economy because of the high revenues and increased customer demands. The automobile industry helps to (2) \_\_\_\_\_ economic development of the country; therefore, it is widely recognised as a major economic sector. The automobile industry consists of multiple companies (3) \_\_\_\_\_ in car manufacturing, as well as the ones involved in marketing and distribution of automobile products, such as cars, buses, vans, trucks, motorcycles, mopeds and (4) \_\_\_\_\_ bicycles. The global automobile industry incorporates several large car manufacturers' blocs that work (5) \_\_\_\_\_ at the global level.

**SubQuestion No : 19**

**Q.19 Select the most appropriate option to fill in blank number 4.**

- Ans  1. fuel-based  
 2. motorised  
 3. non-motorised  
 4. non-fuel

Question ID : 26433089759  
Status : Answered  
Chosen Option : 4

**Comprehension:**

In the following passage, some words have been deleted. Read the passage carefully and select the most appropriate option to fill in each blank.

The automobile industry is one of the (1) \_\_\_\_\_ industries at the global level. It plays a crucial role in the development of the global economy because of the high revenues and increased customer demands. The automobile industry helps to (2) \_\_\_\_\_ economic development of the country; therefore, it is widely recognised as a major economic sector. The automobile industry consists of multiple companies (3) \_\_\_\_\_ in car manufacturing, as well as the ones involved in marketing and distribution of automobile products, such as cars, buses, vans, trucks, motorcycles, mopeds and (4) \_\_\_\_\_ bicycles. The global automobile industry incorporates several large car manufacturers' blocs that work (5) \_\_\_\_\_ at the global level.

**SubQuestion No : 20**

**Q.20 Select the most appropriate option to fill in blank number 5.**

- Ans  1. hurriedly  
 2. smoothly  
 3. collaboratively  
 4. single-handedly

Question ID : 26433089760  
Status : Answered  
Chosen Option : 3

Q.1 हमें पाप से बचना चाहिए।  
उपरोक्त वाक्य में रेखांकित शब्द के सही विलोम शब्द का चयन निम्न विकल्पों में से कीजिए।

- Ans  1. दान  
 2. पुण्य  
 3. अपाप  
 4. कुपाप

Question ID : 26433079642  
Status : Not Answered  
Chosen Option : --

Q.2 निम्न वाक्यांश के लिए सार्थक शब्द/सही विकल्प का चयन कीजिए।  
जिसे ईश्वर में विश्वास न हो

- Ans  1. नकारा  
 2. नमाज़ी  
 3. नश्वर  
 4. नास्तिक

Question ID : 26433066926  
Status : Not Answered  
Chosen Option : --

Q.3 'सोने को स्वर्ण कहो या \_\_\_\_\_ उसकी क्रीमत कम नहीं होती।' 'सोने' के पर्याय से उपरोक्त वाक्य में रिक्त स्थान की पूर्ति कीजिए।

- Ans  1. हीरक  
 2. अभ्रक  
 3. नीलम  
 4. कंचन

Question ID : 26433084984  
Status : Not Answered  
Chosen Option : --

Q.4 'उसने माना पर तुमने नहीं माने।' इस वाक्य में कौन सा शब्द अशुद्ध है?

- Ans  1. नहीं  
 2. माना  
 3. पर  
 4. माने

Question ID : 26433091309  
Status : Not Answered  
Chosen Option : --

Q.5 'इन लोगों ने क्या किया कुछ?' इस वाक्य में कौन सा शब्द अनुपयुक्त है?

- Ans
- 1. इन
  - 2. लोगों
  - 3. क्या
  - 4. कुछ

Question ID : 26433091305  
Status : Not Answered  
Chosen Option : --

Q.6 निम्न वाक्यांश के लिए एक सही शब्द का चयन विकल्पों में से कीजिए।  
परलोक से संबंध रखने वाला

- Ans
- 1. पुरलौकिक
  - 2. समलौकिक
  - 3. पारलौकिक
  - 4. पारलौकिक

Question ID : 26433070095  
Status : Not Answered  
Chosen Option : --

Q.7 'फूल की रज' – वाक्य खंड के लिए उपयुक्त शब्द क्या होगा?

- Ans
- 1. पार्थिव
  - 2. प्रदोष
  - 3. पतित
  - 4. पराग

Question ID : 26433063058  
Status : Not Answered  
Chosen Option : --

Q.8 निम्नलिखित वाक्य में रेखांकित खंड के स्थान पर प्रयुक्त होने वाले सबसे उपयुक्त विकल्प का चयन कीजिए।  
लड़के ने पत्र लिखी।

- Ans
- 1. लिखाई
  - 2. लिखा
  - 3. लिखता
  - 4. लिख

Question ID : 26433079565  
Status : Not Answered  
Chosen Option : --



Q.9 'आस्तीन का साँप' मुहावरे का सही अर्थ है -

- Ans  1. कपटी मित्र होना  
 2. किसी के साथ अन्याय करना  
 3. साँप काट लेना  
 4. साँप देख लेना

Question ID : 26433065922  
Status : Not Answered  
Chosen Option : --

Q.10 निम्नलिखित मुहावरे के उचित अर्थ का चयन कीजिए-  
पट्टी पढ़ाना

- Ans  1. बुरी राय देना  
 2. याद करवाना  
 3. पढ़ाई करवाना  
 4. बहुत कुछ बताना

Question ID : 26433065889  
Status : Not Answered  
Chosen Option : --

Q.11 निम्नलिखित में से कौन सा क्रिया से बना एक विशेषण शब्द है?

- Ans  1. गाना  
 2. दौड़ना  
 3. भागना  
 4. लड़ाकू

Question ID : 26433085055  
Status : Not Answered  
Chosen Option : --

Q.12 विकल्पों में से 'अलि' का पर्यायवाची चुनकर निम्न वाक्य पूर्ण कीजिए।  
फूल पर \_\_\_\_\_ गुनगुनाता है।

- Ans  1. वास  
 2. अब्ज  
 3. भृंग  
 4. काक

Question ID : 26433063087  
Status : Not Answered  
Chosen Option : --

Q.13 जीवन में उत्साह बना रहना चाहिए।  
उपरोक्त वाक्य में रेखांकित शब्द के सही विलोम शब्द का चयन निम्न विकल्पों में से कीजिए।

- Ans  1. वित्साह  
 2. निरुत्साह  
 3. हतुत्साह  
 4. प्रत्साह

Question ID : 26433079741  
Status : Not Answered  
Chosen Option : --

Q.14 निम्नलिखित विकल्पों में से 'प्रारम्भ से लेकर अंत तक' वाक्यांश के लिए एक सार्थक शब्द क्या होगा ?

- Ans  1. आद्योपान्त  
 2. अपरिचय  
 3. परिचय  
 4. निरक्षर

Question ID : 26433062469  
Status : Not Answered  
Chosen Option : --

Q.15 निम्न में से कौन सा विकल्प स्थानवाचक क्रिया-विशेषण का उदाहरण नहीं है?

- Ans  1. भीतर  
 2. तेज  
 3. बाएं  
 4. ऊपर

Question ID : 26433079229  
Status : Not Answered  
Chosen Option : --

KD Job Updates

**Comprehension:**

नीचे पूछे गए प्रश्न संख्या 1 से 5 के उत्तर निम्न गद्यांश के आधार पर दीजिए।

सौर परिवार में पृथ्वी पर ही जीवन का अस्तित्व है। सभी सजीवों (पौधे और जंतु) में उपापचयी क्रियाएँ (पोषण, श्वसन एवं उत्सर्जन), आकार में 1. \_\_\_\_\_, शरीर के विभिन्न अंगों में समन्वय, कार्य करने की क्षमता तथा उद्दीपन के प्रति संवेदना होती है। वृद्धि की विशेषावधि के पश्चात सभी पौधे तथा जंतु जनन द्वारा अपने जैसी ही संतति उत्पन्न करते हैं। सभी पौधे तथा जंतुओं की निश्चित 2. \_\_\_\_\_ होती है, परंतु कोई भी दो पौधे या जंतु एक समान नहीं होते हैं। ऐसी विभिन्नताएँ 3. \_\_\_\_\_ के समय उत्पन्न होती हैं तथा जैविक विकास के लिए मुख्य 4. \_\_\_\_\_ बनती हैं। सजीव तंत्र के विलक्षण संगठन के कारण ही विभिन्न जैविक क्रियाएँ संभव हैं। संगठन के विभिन्न स्तर हैं आणविक, कोशिकीय, ऊतकीय, अंगतंत्र, व्यष्टि, समष्टि (जनसंख्या), समुदाय, पारिस्थितिक तंत्र एवं जीव मंडल। संगठन के इन नौ स्तरों के अंतर्गत 5. \_\_\_\_\_ के गुण केवल कोशिकीय स्तर पर दिखाई देते हैं तथा जीवमंडल से आगे नहीं जाते। कोशिकाएँ विभिन्न आकार और आकृति की हो सकती हैं। कुछ जीव एककोशिक होते हैं, जबकि कुछ बहुकोशिक होते हैं। प्रत्येक कोशिका का एक निश्चित आकार होता है तथा उसमें विभिन्न कार्यों के लिए अनेक कोशिकांग होते हैं। इस प्रकार कोशिका किसी भी जीव की इकाई है और सभी कोशिकाएँ पहले से निर्मित कोशिका से विकसित होती हैं।

**SubQuestion No : 16**

Q.16 रिक्त स्थान 1 के लिए सर्वाधिक उपयुक्त शब्द इनमें से क्या होगा?

- Ans  1. ब्याज  
 2. ऋण  
 3. वृद्धि  
 4. रत्न

Question ID : 26433070121

Status : Not Answered

Chosen Option : --

**Comprehension:**

नीचे पूछे गए प्रश्न संख्या 1 से 5 के उत्तर निम्न गद्यांश के आधार पर दीजिए।

सौर परिवार में पृथ्वी पर ही जीवन का अस्तित्व है। सभी सजीवों (पौधे और जंतु) में उपापचयी क्रियाएँ (पोषण, श्वसन एवं उत्सर्जन), आकार में 1. \_\_\_\_\_, शरीर के विभिन्न अंगों में समन्वय, कार्य करने की क्षमता तथा उद्दीपन के प्रति संवेदना होती है। वृद्धि की विशेषावधि के पश्चात सभी पौधे तथा जंतु जनन द्वारा अपने जैसी ही संतति उत्पन्न करते हैं। सभी पौधे तथा जंतुओं की निश्चित 2. \_\_\_\_\_ होती है, परंतु कोई भी दो पौधे या जंतु एक समान नहीं होते हैं। ऐसी विभिन्नताएँ 3. \_\_\_\_\_ के समय उत्पन्न होती हैं तथा जैविक विकास के लिए मुख्य 4. \_\_\_\_\_ बनती हैं। सजीव तंत्र के विलक्षण संगठन के कारण ही विभिन्न जैविक क्रियाएँ संभव हैं। संगठन के विभिन्न स्तर हैं आणविक, कोशिकीय, ऊतकीय, अंगतंत्र, व्यष्टि, समष्टि (जनसंख्या), समुदाय, पारिस्थितिक तंत्र एवं जीव मंडल। संगठन के इन नौ स्तरों के अंतर्गत 5. \_\_\_\_\_ के गुण केवल कोशिकीय स्तर पर दिखाई देते हैं तथा जीवमंडल से आगे नहीं जाते। कोशिकाएँ विभिन्न आकार और आकृति की हो सकती हैं। कुछ जीव एककोशिक होते हैं, जबकि कुछ बहुकोशिक होते हैं। प्रत्येक कोशिका का एक निश्चित आकार होता है तथा उसमें विभिन्न कार्यों के लिए अनेक कोशिकांग होते हैं। इस प्रकार कोशिका किसी भी जीव की इकाई है और सभी कोशिकाएँ पहले से निर्मित कोशिका से विकसित होती हैं।

**SubQuestion No : 17**

Q.17 रिक्त स्थान 2 के लिए सर्वाधिक उपयुक्त शब्द इनमें से क्या होगा?

- Ans  1. विन्यास  
 2. आकृति  
 3. आकार  
 4. विकार

Question ID : 26433070122

Status : Not Answered

Chosen Option : --

**Comprehension:**

नीचे पूछे गए प्रश्न संख्या 1 से 5 के उत्तर निम्न गद्यांश के आधार पर दीजिए।

सौर परिवार में पृथ्वी पर ही जीवन का अस्तित्व है। सभी सजीवों (पौधे और जंतु) में उपापचयी क्रियाएँ (पोषण, श्वसन एवं उत्सर्जन), आकार में 1. \_\_\_\_\_, शरीर के विभिन्न अंगों में समन्वय, कार्य करने की क्षमता तथा उद्दीपन के प्रति संवेदना होती है। वृद्धि की विशेषावधि के पश्चात सभी पौधे तथा जंतु जनन द्वारा अपने जैसी ही संतति उत्पन्न करते हैं। सभी पौधे तथा जंतुओं की निश्चित 2. \_\_\_\_\_ होती है, परंतु कोई भी दो पौधे या जंतु एक समान नहीं होते हैं। ऐसी विभिन्नताएँ 3. \_\_\_\_\_ के समय उत्पन्न होती हैं तथा जैविक विकास के लिए मुख्य 4. \_\_\_\_\_ बनती हैं। सजीव तंत्र के विलक्षण संगठन के कारण ही विभिन्न जैविक क्रियाएँ संभव हैं। संगठन के विभिन्न स्तर हैं आणविक, कोशिकीय, ऊतकीय, अंगतंत्र, व्यष्टि, समष्टि (जनसंख्या), समुदाय, पारिस्थितिक तंत्र एवं जीव मंडल। संगठन के इन नौ स्तरों के अंतर्गत 5. \_\_\_\_\_ के गुण केवल कोशिकीय स्तर पर दिखाई देते हैं तथा जीवमंडल से आगे नहीं जाते। कोशिकाएँ विभिन्न आकार और आकृति की हो सकती हैं। कुछ जीव एककोशिक होते हैं, जबकि कुछ बहुकोशिक होते हैं। प्रत्येक कोशिका का एक निश्चित आकार होता है तथा उसमें विभिन्न कार्यों के लिए अनेक कोशिकांग होते हैं। इस प्रकार कोशिका किसी भी जीव की इकाई है और सभी कोशिकाएँ पहले से निर्मित कोशिका से विकसित होती हैं।

**SubQuestion No : 18**

Q.18 रिक्त स्थान 3 के लिए सर्वाधिक उपयुक्त शब्द इनमें से क्या होगा?

- Ans  1. प्रवास  
 2. जनन  
 3. जननी  
 4. मृत्यु

Question ID : 26433070123

Status : Not Answered

Chosen Option : --

**Comprehension:**

नीचे पूछे गए प्रश्न संख्या 1 से 5 के उत्तर निम्न गद्यांश के आधार पर दीजिए।

सौर परिवार में पृथ्वी पर ही जीवन का अस्तित्व है। सभी सजीवों (पौधे और जंतु) में उपापचयी क्रियाएँ (पोषण, श्वसन एवं उत्सर्जन), आकार में 1. \_\_\_\_\_, शरीर के विभिन्न अंगों में समन्वय, कार्य करने की क्षमता तथा उद्दीपन के प्रति संवेदना होती है। वृद्धि की विशेषावधि के पश्चात सभी पौधे तथा जंतु जनन द्वारा अपने जैसी ही संतति उत्पन्न करते हैं। सभी पौधे तथा जंतुओं की निश्चित 2. \_\_\_\_\_ होती है, परंतु कोई भी दो पौधे या जंतु एक समान नहीं होते हैं। ऐसी विभिन्नताएँ 3. \_\_\_\_\_ के समय उत्पन्न होती हैं तथा जैविक विकास के लिए मुख्य 4. \_\_\_\_\_ बनती हैं। सजीव तंत्र के विलक्षण संगठन के कारण ही विभिन्न जैविक क्रियाएँ संभव हैं। संगठन के विभिन्न स्तर हैं आणविक, कोशिकीय, ऊतकीय, अंगतंत्र, व्यष्टि, समष्टि (जनसंख्या), समुदाय, पारिस्थितिक तंत्र एवं जीव मंडल। संगठन के इन नौ स्तरों के अंतर्गत 5. \_\_\_\_\_ के गुण केवल कोशिकीय स्तर पर दिखाई देते हैं तथा जीवमंडल से आगे नहीं जाते। कोशिकाएँ विभिन्न आकार और आकृति की हो सकती हैं। कुछ जीव एककोशिक होते हैं, जबकि कुछ बहुकोशिक होते हैं। प्रत्येक कोशिका का एक निश्चित आकार होता है तथा उसमें विभिन्न कार्यों के लिए अनेक कोशिकांग होते हैं। इस प्रकार कोशिका किसी भी जीव की इकाई है और सभी कोशिकाएँ पहले से निर्मित कोशिका से विकसित होती हैं।

**SubQuestion No : 19**

Q.19 रिक्त स्थान 4 के लिए सर्वाधिक उपयुक्त शब्द इनमें से क्या होगा?

- Ans  1. आकार  
 2. रेखा  
 3. प्रकार  
 4. आधार

Question ID : 26433070124

Status : Not Answered

Chosen Option : --

**Comprehension:**

नीचे पूछे गए प्रश्न संख्या 1 से 5 के उत्तर निम्न गद्यांश के आधार पर दीजिए।

सौर परिवार में पृथ्वी पर ही जीवन का अस्तित्व है। सभी सजीवों (पौधे और जंतु) में उपापचयी क्रियाएँ (पोषण, श्वसन एवं उत्सर्जन), आकार में 1. \_\_\_\_\_, शरीर के विभिन्न अंगों में समन्वय, कार्य करने की क्षमता तथा उद्दीपन के प्रति संवेदना होती है। वृद्धि की विशेषावधि के पश्चात सभी पौधे तथा जंतु जनन द्वारा अपने जैसी ही संतति उत्पन्न करते हैं। सभी पौधे तथा जंतुओं की निश्चित 2. \_\_\_\_\_ होती है, परंतु कोई भी दो पौधे या जंतु एक समान नहीं होते हैं। ऐसी विभिन्नताएँ 3. \_\_\_\_\_ के समय उत्पन्न होती हैं तथा जैविक विकास के लिए मुख्य 4. \_\_\_\_\_ बनती हैं। सजीव तंत्र के विलक्षण संगठन के कारण ही विभिन्न जैविक क्रियाएँ संभव हैं। संगठन के विभिन्न स्तर हैं आणविक, कोशिकीय, ऊतकीय, अंगतंत्र, व्यष्टि, समष्टि (जनसंख्या), समुदाय, पारिस्थितिक तंत्र एवं जीव मंडल। संगठन के इन नौ स्तरों के अंतर्गत 5. \_\_\_\_\_ के गुण केवल कोशिकीय स्तर पर दिखाई देते हैं तथा जीवमंडल से आगे नहीं जाते। कोशिकाएँ विभिन्न आकार और आकृति की हो सकती हैं। कुछ जीव एककोशिक होते हैं, जबकि कुछ बहुकोशिक होते हैं। प्रत्येक कोशिका का एक निश्चित आकार होता है तथा उसमें विभिन्न कार्यों के लिए अनेक कोशिकांग होते हैं। इस प्रकार कोशिका किसी भी जीव की इकाई है और सभी कोशिकाएँ पहले से निर्मित कोशिका से विकसित होती हैं।

**SubQuestion No : 20**

Q.20 रिक्त स्थान 5 के लिए सर्वाधिक उपयुक्त शब्द इनमें से क्या होगा?

- Ans
- 1. विकास
  - 2. मरण
  - 3. जीवन
  - 4. जीव

Question ID : 26433070125

Status : Not Answered

Chosen Option : --

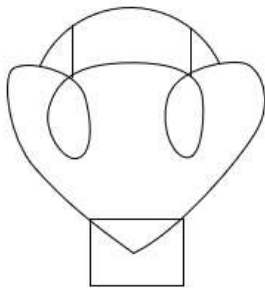
KD Job Updates

# Constable GD in CAPFs SSF Rifleman GD in Assam Rifles and Sepoy in NCB Examination 2022

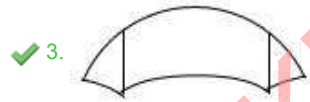
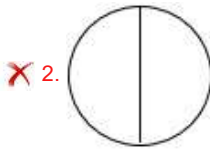

Roll Number	KD Job Updates
Candidate Name	KD Job Updates
Venue Name	iON Digital Zone iDZ 2 Chinamushidiwada
Exam Date	31/01/2023
Exam Time	2:30 PM - 3:30 PM
Subject	Constable GD Examination 2022

Section : Part-A-General Intelligence and Reasoning

Q.1 Select the option figure which is embedded in the given figure. (Rotation is NOT allowed)



Ans



Question ID : 26433069340

Status : Answered

Chosen Option : 3

**Q.2** In this question, three statements are given, followed by two conclusions numbered I and II. Assuming the statements to be true, even if they seem to be at variance with commonly known facts, decide which of the conclusions logically follows/follow from the statements.

**Statements:**

Some watches are clocks.

All clocks are black.

All black are big.

**Conclusions:**

I. Some watches are big.

II. Some watches are black.

**Ans**  1. Only conclusion II follows.

2. Both conclusions I and II follow.

3. Neither conclusion I nor II follows.

4. Only conclusion I follows.

Question ID : 26433070395

Status : Answered

Chosen Option : 2

**Q.3** Which two signs should be interchanged to make the below equation mathematically correct?

$$78 + 3 \div 26 - 8 \times 24 = 25$$

**Ans**  1. ÷ and ×

2. ÷ and +

3. + and -

4. × and +

Question ID : 264330117497

Status : Answered

Chosen Option : 4

**Q.4** A @ B means 'A is the sister of B'.

A & B means 'A is the brother of B'.

A # B means 'A is the wife of B'.

A ^ B means 'A is the mother of B'.

A + B means 'A is the father of B'.

If  $U \wedge Q \wedge R @ N \& C \wedge I @ J @ A$ , then which of the following statements is NOT correct?

**Ans**  1. C is the daughter of Q.

2. Q is the maternal grandfather of I.

3. J is the daughter of C

4. Q is the mother of N.

Question ID : 26433068949

Status : Answered

Chosen Option : 2

**Q.5** Which of the following numbers will replace the question mark (?) in the given series?  
13, 4, 17, 8, 21, 16, 25 ?

- Ans
- 1. 36
  - 2. 39
  - 3. 32
  - 4. 29

Question ID : 26433067881  
Status : Answered  
Chosen Option : 3

**Q.6** Which of the following numbers will replace the question mark (?) in the given series?  
12, 24, 48, 84, 132, ?

- Ans
- 1. 192
  - 2. 162
  - 3. 176
  - 4. 144

Question ID : 26433069050  
Status : Answered  
Chosen Option : 1

KD Job Updates

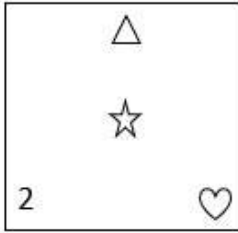


Q.7 Which figure should replace the question mark (?) if the series were to be continued?

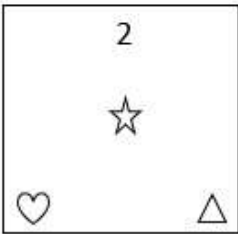
△	△	♡	♡	?
☆	2	2	☆	
2	♡	♡	☆	△
	☆	☆	△	△
			2	

Ans

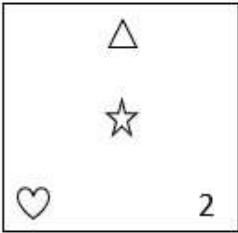
✓ 1.



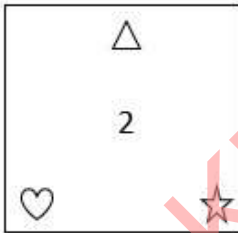
✗ 2.



✗ 3.



✗ 4.



Question ID : 26433076623  
 Status : Not Answered  
 Chosen Option : --

Q.8 In a certain language, RAT is coded as 3, BOTTLE is coded as 6, how will MOBILE be coded in the same language?

Ans ✓ 1. 6

✗ 2. 18

✗ 3. 12

✗ 4. 5

Question ID : 26433074591  
 Status : Answered  
 Chosen Option : 1

**Q.9** Select the set in which the numbers are related in the same way as are the numbers of the following set.

(NOTE : Operations should be performed on the whole numbers, without breaking down the numbers into its constituent digits. E.g. 13 – Operations on 13 such as adding /subtracting/multiplying etc. to 13 can be performed. Breaking down 13 into 1 and 3 and then performing mathematical operations on 1 and 3 is NOT allowed)  
(45, 24, 231)  
(65, 47, 198)

Ans  1. (46, 13, 363)

2. (35, 12, 296)

3. (75, 45, 390)

4. (70, 35, 285)

Question ID : 26433076489

Status : Not Answered

Chosen Option : --

**Q.10** Six students are sitting around a circular table facing the centre. Raj is the immediate neighbour of Liam and Maria. Siddharth is sitting to the second right of Maria. Tanya is sitting to the third left of Liam. Nathan is sitting to the immediate left of Liam. Who is the immediate neighbour of Siddharth and Maria?

Ans  1. Liam

2. Tanya

3. Nathan

4. Raj

Question ID : 26433074605

Status : Answered

Chosen Option : 2

**Q.11** Seven friends A, B, C, D, E, F and G are sitting around a circle facing towards the centre. D is sitting third to the right of A and immediately left of G. Only B is sitting between G and E. C is sitting to the immediate left of F. Who is sitting second to the left of G?

Ans  1. C

2. A

3. F

4. E

Question ID : 26433079054

Status : Answered

Chosen Option : 3

Q.12 Select the correct mirror image of the given figure when the mirror is placed at MN as shown below.

S n M w D N A  
M ————— N

Ans

- ✗ 1. S n M w D N A
- ✓ 2. A n D w M n S
- ✗ 3. A n D w M n S
- ✗ 4. S n M w D N A

Question ID : 26433080806

Status : Answered

Chosen Option : 2

Q.13 In a certain code language, TIRE D is coded as 56, and FRESH is coded as 56. How will HEAVEN be coded in that language?

Ans

- ✗ 1. 56
- ✓ 2. 55
- ✗ 3. 52
- ✗ 4. 54

Question ID : 26433067997

Status : Answered

Chosen Option : 2

Q.14 Which of the following terms will replace the question mark (?) in the given series?  
WKRF, VLQG, TNOI, ?, MUHP

Ans

- ✗ 1. PQML
- ✓ 2. QQLL
- ✗ 3. QLLQ
- ✗ 4. QPLM

Question ID : 26433068306

Status : Answered

Chosen Option : 2

Q.15 Which option represents the correct order of the given words as they would appear in the English dictionary?

- 1 Glass
- 2 Glycerine
- 3 Glare
- 4 Glow
- 5 Glamorous

- Ans  1. 5,3,1,2,4
2. 5,3,1,4,2
3. 3,1,4,5,2
4. 3,5,4,1,2

Question ID : 26433069272

Status : Answered

Chosen Option : 2

Q.16 If '+' means '-', '-' means '+', 'x' means '÷', and '÷' means 'x'. Which of the following will be the value of the expression?

$$81 \times 9 + 21 - 7 \div 147$$

- Ans  1. 6
2. 9
3. 294
4. 303

Question ID : 264330114184

Status : Answered

Chosen Option : 2

Q.17 Select the option that is related to the fifth letter-cluster in the same way as the second letter-cluster is related to the first letter-cluster and the fourth letter-cluster is related to the third letter-cluster.

PENSION : NENSIOP :: QUALITY : YUALITQ :: PRODUCT : ?

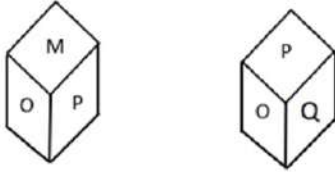
- Ans  1. TCUDORP
2. ORPTCUD
3. DUCTPRO
4. TRODUCP

Question ID : 26433069635

Status : Answered

Chosen Option : 4

**Q.18** Two different positions of the same dice are shown having alphabets 'M' to 'R'. Find the alphabet on the face opposite the face showing 'M'.



- Ans**  1. Q  
 2. P  
 3. R  
 4. N

Question ID : 26433085513  
Status : Not Answered  
Chosen Option : --

**Q.19** Which of the following letters will replace the question mark (?) and complete the following letter series?  
B, C, G, P, F, ?

- Ans**  1. F  
 2. E  
 3. C  
 4. D

Question ID : 26433067286  
Status : Not Answered  
Chosen Option : --

**Q.20** Select the option that is related to the fifth letter-cluster in the same way as the second letter-cluster is related to the first letter-cluster and the fourth letter-cluster is related to the third letter-cluster.

NEAR: KJEG :: SAME: FFQT :: EARN: ?

- Ans**  1. JXGR  
 2. JFWS  
 3. TFVK  
 4. VZIM

Question ID : 26433057496  
Status : Not Answered  
Chosen Option : --

**Q.1 The Dronacharya Award for coaches started in which year?**

**Ans** ✓ 1. 1985

✗ 2. 1984

✗ 3. 1982

✗ 4. 1987

Question ID : 264330116257  
Status : **Not Answered**  
Chosen Option : --

**Q.2 The \_\_\_\_\_ refers to the excess of government's revenue expenditure over revenue receipts.**

**Ans** ✗ 1. revenue surplus

✓ 2. revenue deficit

✗ 3. capital deficit

✗ 4. fiscal deficit

Question ID : 264330115284  
Status : **Not Answered**  
Chosen Option : --

**Q.3 What is the name of the first Indian tribal president?**

**Ans** ✓ 1. Droupadi Murmu

✗ 2. Bishweswar Tudu

✗ 3. Jasvantsinh Bhabhor

✗ 4. Sudarshan Bhagat

Question ID : 264330114987  
Status : **Answered**  
Chosen Option : 1

**Q.4 What is different about castor seeds?**

**Ans** ✗ 1. It is the only rabi crop

✗ 2. It is neither rabi nor kharif

✗ 3. It is only zaid crop

✓ 4. It is both rabi and kharif crop

Question ID : 264330115531  
Status : **Not Answered**  
Chosen Option : --

**Q.5 Songkran is a Buddhist festival. This festival is celebrated for several days in the month of \_\_\_\_\_.**

- Ans
- 1. March
  - 2. June
  - 3. April
  - 4. May

Question ID : 264330115089  
Status : Not Answered  
Chosen Option : --

**Q.6 As per the 73rd and 74th amendment India has \_\_\_\_\_-tier government system.**

- Ans
- 1. Three
  - 2. Four
  - 3. Two
  - 4. Single

Question ID : 264330115619  
Status : Not Answered  
Chosen Option : --

**Q.7 Which of the following has been conferred the Kalidas Samman in February 2022?**

- Ans
- 1. Kumar Gandharva
  - 2. Zia Mohiuddin Dagar
  - 3. M. Venkateshkumar
  - 4. Bhupen Khakhar

Question ID : 264330115829  
Status : Not Answered  
Chosen Option : --

**Q.8 Which state has the highest sex ratio as per the Census 2011?**

- Ans
- 1. Odisha
  - 2. Andhra Pradesh
  - 3. Kerala
  - 4. Tamil Nadu

Question ID : 264330116038  
Status : Not Answered  
Chosen Option : --

**Q.9 Shevroy Hills and the Javadi Hills are located to the \_\_\_\_\_.**

- Ans
- 1. northeast of the Western Ghats
  - 2. southeast of the Eastern Ghats
  - 3. southwest of the Eastern Ghats
  - 4. southeast of the Western Ghats

Question ID : 264330115986  
Status : Not Answered  
Chosen Option : --

Q.10 Who among the following became Member of Legislative Assembly from Bochahan, Bihar in India, in April 2022?

- Ans
- 1. Baby Kumari
  - 2. Amar Kumar Paswan
  - 3. Ramvriksh Sada
  - 4. Tej Pratap Yadav

Question ID : 264330114903  
Status : Not Answered  
Chosen Option : --

Q.11 Jagoi and Cholom are the two main divisions in which of the following classical dance forms?

- Ans
- 1. Kathak
  - 2. Odissi
  - 3. Manipuri
  - 4. Sattriya

Question ID : 26433071449  
Status : Not Answered  
Chosen Option : --

Q.12 Which Article of the Constitution of India mandates the position of a Vice President of India?

- Ans
- 1. Article 42
  - 2. Article 53
  - 3. Article 63
  - 4. Article 49

Question ID : 26433054539  
Status : Not Answered  
Chosen Option : --

Q.13 For the first time in the world, the Five-Year Plan (1928–32), was implemented by \_\_\_\_\_ in Soviet Union.

- Ans
- 1. Steve Jobs
  - 2. Karl Marx
  - 3. Adam Smith
  - 4. Joseph Stalin

Question ID : 264330115369  
Status : Not Answered  
Chosen Option : --



Q.14 Swachh Bharat Mission was launched in year \_\_\_\_\_.

Ans  1. 2012

2. 2014

3. 2016

4. 2013

Question ID : 264330116175  
Status : Not Answered  
Chosen Option : --

Q.15 Which of the following major incidents occurred in 1919?

Ans  1. Jallianwala bagh massacre

2. Bengal partition

3. Non-cooperation movement

4. Champaran movement

Question ID : 26433089881  
Status : Not Answered  
Chosen Option : --

Q.16 The 12th Five-Year Plan aims to achieve annual average economic growth rate of \_\_\_\_\_.

Ans  1. 6.2 per cent

2. 9.3 per cent

3. 7.1 per cent

4. 8.2 per cent

Question ID : 264330116128  
Status : Not Answered  
Chosen Option : --

Q.17 The sound waves having frequencies less than \_\_\_\_\_ Hz are called infrasonic waves.

Ans  1. 15

2. 5

3. 10

4. 20

Question ID : 264330115151  
Status : Not Answered  
Chosen Option : --

Q.18 The mascot of 2022 National games of India is based on which animal?

- Ans
- 1. Peacock
  - 2. Lion
  - 3. Cheetah
  - 4. Cow

Question ID : 264330115952  
Status : Not Answered  
Chosen Option : --

Q.19 In plants cell, \_\_\_\_\_ are primarily organelles in which materials such as starch, oils and protein granules are stored.

- Ans
- 1. Leucoplasts
  - 2. Mitochondria
  - 3. Vacuoles
  - 4. Chromoplasts

Question ID : 264330115212  
Status : Not Answered  
Chosen Option : --

Q.20 Which of the following rivers is named only once in Rigveda?

- Ans
- 1. Ganga
  - 2. Indus
  - 3. Saraswati
  - 4. Jhelum

Question ID : 26433089850  
Status : Not Answered  
Chosen Option : --

Section : Part-C-Elementary Mathematics

Q.1 The cost price of 20 balls is the same as the selling price of 18 balls. Find the profit percentage.

- Ans
- 1.  $\frac{100}{9}\%$
  - 2. 16%
  - 3. 10%
  - 4. 14%

Question ID : 26433075724  
Status : Answered  
Chosen Option : 1

Q.2 Anand with his family travelled from Guntur to Rajahmundry by car at a speed of 50 km/h and returned to Guntur at a speed of 60 km/h. The average speed for the whole journey is: (Consider up to two decimal places)

- Ans
- 1. 54.54 km/h
  - 2. 64.64 km/h
  - 3. 34.54 km/h
  - 4. 44.34 km/h

Question ID : 26433081042  
Status : Answered  
Chosen Option : 1

Q.3 A dealer fixed the price of an article 40% above the cost of production. While selling it he allows a discount of 20% and makes a profit of Rs.72. Find the cost of production (in Rs.) of the article.

- Ans
- 1. Rs.540
  - 2. Rs.600
  - 3. Rs.750
  - 4. Rs.590

Question ID : 26433066306  
Status : Answered  
Chosen Option : 2

Q.4 A rectangular ground 90m long and 42 m wide has two cross roads in its centre. The road parallel to the length is 7 m wide and the other road is 3 m wide, both roads are perpendicular to each other. The cost of laying the bricks at the rate of Rs.25 per m<sup>2</sup>, on the roads, will be:

- Ans
- 1. Rs.18,308
  - 2. Rs.18,575
  - 3. Rs.18,375
  - 4. Rs.16,375

Question ID : 26433083057  
Status : Not Answered  
Chosen Option : --

Q.5 In what time will ₹6,750 amount to ₹8,984.25 at the interest rate of 20% per annum, compounded half yearly?

- Ans
- 1.  $2\frac{1}{2}$  year
  - 2.  $\frac{1}{2}$  year
  - 3.  $1\frac{1}{2}$  year
  - 4. 2 year

Question ID : 26433076401  
Status : Not Answered  
Chosen Option : --

Q.6 Which type of numbers are NOT co-prime?

- Ans
- 1. Any two prime numbers
  - 2. Any two consecutive odd numbers
  - 3. Any two consecutive numbers
  - 4. Any two consecutive even numbers

Question ID : 26433080284

Status : Answered

Chosen Option : 4

Q.7 Ramesh and Suresh can complete a piece of work in 10 days and 12 days, respectively. If they are working on alternate days, starting with Ramesh, in how many days will the entire work be finished?

- Ans
- 1.  $12\frac{10}{11}$
  - 2.  $10\frac{10}{11}$
  - 3.  $12\frac{5}{6}$
  - 4.  $10\frac{5}{6}$

Question ID : 26433075569

Status : Answered

Chosen Option : 2

Q.8 The ratio of alcohol to water in three types of drugs of equal quantity is 2 : 5, 5 : 9 and 8 : 13 respectively. Equal quantity of all the three drugs is mixed. Find the ratio of alcohol to water after mixing .

- Ans
- 1. 34 : 38
  - 2. 12 : 19
  - 3. 43 : 83
  - 4. 57 : 61

Question ID : 26433081576

Status : Not Answered

Chosen Option : --

Q.9 Johnson borrows ₹30,000 at 5% compound interest per annum. He wants to pay this amount back by the end of 2 years in two equal yearly installments. How much does he have to pay approximately at the end of each year?

- Ans
- 1. ₹16,134
  - 2. ₹15,231
  - 3. ₹16,274
  - 4. ₹15,784

Question ID : 26433080241  
Status : Not Answered  
Chosen Option : --

Q.10 Find three numbers in the ratio of 6 : 4 : 10 such that the sum of their squares is equal to 3800.

- Ans
- 1. 30, 20 and 40
  - 2. 30, 30 and 50
  - 3. 40, 20 and 50
  - 4. 30, 20 and 50

Question ID : 26433081028  
Status : Not Attempted and Marked For Review  
Chosen Option : --

Q.11 In a panchayat election an independent candidate got 28% of the total votes polled and was declared the winner. The rest of the votes were equally divided among the candidates of three national parties. If the total votes polled were 1200, how many votes did the each candidate of national party get?

- Ans
- 1. 312
  - 2. 272
  - 3. 292
  - 4. 288

Question ID : 26433081483  
Status : Answered  
Chosen Option : 4

Q.12 The salary of an employee in the month of March is ₹7,500 and the company increases his salary every month by 2%. His salary in the month of May of the same year is:

- Ans
- 1. ₹7,803
  - 2. ₹6,484
  - 3. ₹4,348
  - 4. ₹4,843

Question ID : 26433081558  
Status : Answered  
Chosen Option : 1

Q.13 A car covers the first 35 km in 15 minutes and the next 45 km in 25 minutes. What is the average speed of the car?

- Ans  1. 120 km/h  
 2. 130 km/h  
 3. 124 km/h  
 4. 135 km/h

Question ID : 26433080226

Status : Not Attempted and Marked For Review

Chosen Option : --

Q.14 A can complete  $\frac{3}{4}$ th of the work in 9 days and B can complete  $\frac{2}{5}$ th of the work in 12 days. With the help of C, all three together complete the whole work in  $\frac{60}{11}$  days and earn Rs. 330. If money is shared in the ratio of work done, then find the difference in the share of C and the share of A.

- Ans  1. Rs.40  
 2. Rs.30  
 3. Rs.70  
 4. Rs.60

Question ID : 264330116859

Status : Not Answered

Chosen Option : --

Q.15 The price of 2 tables is equal to the price of 5 chairs. If price of a chair is Rs. 500, then what is the average price of 6 tables and 9 chairs?

- Ans  1. Rs 750  
 2. Rs 800  
 3. Rs 900  
 4. Rs 850

Question ID : 264330116691

Status : Answered

Chosen Option : 2

Q.16 If Ram bought 15 shirts of ₹520 each, 20 pants of ₹600 each and 15 kurtas at ₹650 each, then the average value of each article is:

- Ans  1. ₹591  
 2. ₹691  
 3. ₹519  
 4. ₹619

Question ID : 26433079905

Status : Not Answered

Chosen Option : --

Q.17 The single discount equivalent to the successive discounts of 30 percent, 15 percent and 5 percent is:

- Ans  1. 43.475 percent  
 2. 48.80 percent  
 3. 56.525 percent  
 4. 59.50 percent

Question ID : 264330116744  
Status : Not Answered  
Chosen Option : --

Q.18 If the diameter and height of a cylinder are  $d$  cm and  $\frac{d}{2}$  cm, respectively, then its volume is:

- Ans  1.  $\pi \frac{d^2}{2} \text{ cm}^3$   
 2.  $\pi d^2 \text{ cm}^3$   
 3.  $\pi \frac{d^3}{8} \text{ cm}^3$   
 4.  $\pi \frac{d^2}{4} \text{ cm}^3$

Question ID : 26433075535  
Status : Not Answered  
Chosen Option : --

Q.19 If a number 'a' is divisible by 6 and 21, then 5a is divisible by :

- Ans  1. 180  
 2. 610  
 3. 440  
 4. 210

Question ID : 26433081699  
Status : Not Answered  
Chosen Option : --

Q.20 The total cost price of a book and pen is Rs.371. If the book cost price is 12% more than the pen, find the cost price of the pen.

- Ans  1. Rs.200  
 2. Rs.150  
 3. Rs.125  
 4. Rs.175

Question ID : 26433076034  
Status : Not Answered  
Chosen Option : --

Q.1 Select the most appropriate ANTONYM of the given word.

Initial

- Ans  1. Trivial  
 2. Inaugural  
 3. Fractional  
 4. Terminal

Question ID : 26433071971  
Status : Answered  
Chosen Option : 4

Q.2 Select the most appropriate meaning of the given idiom.

Let the cat out of the bag

- Ans  1. To make an announcement  
 2. To praise oneself  
 3. To work continuously  
 4. To reveal a secret accidentally

Question ID : 26433072677  
Status : Answered  
Chosen Option : 1

Q.3 Parts of the following sentence have been underlined and given as options. Select the option that contains an error.

They eating three apples after last night's dinner.

- Ans  1. night's  
 2. after  
 3. eating  
 4. three

Question ID : 26433089365  
Status : Not Answered  
Chosen Option : --

Q.4 Select the most appropriate ANTONYM of the given word.

Latent

- Ans  1. Obvious  
 2. Deceitful  
 3. Casual  
 4. Dormant

Question ID : 26433071979  
Status : Not Answered  
Chosen Option : --



**Q.5** Select the most appropriate synonym of the given word.

**Salty**

- Ans**  1. Feline  
 2. Prim  
 3. Saline  
 4. Pricky

Question ID : 26433089341  
Status : Answered  
Chosen Option : 4

**Q.6** Select the most appropriate synonym of the given word.

**Adamant**

- Ans**  1. Lax  
 2. Flexible  
 3. Stubborn  
 4. Genuine

Question ID : 26433073431  
Status : Not Answered  
Chosen Option : --

**Q.7** Select the most appropriate option to fill in the blank.

Advancement in science and technology in many areas \_\_\_\_\_ the lives of people more advanced than the ancient times.

- Ans**  1. was made  
 2. has made  
 3. is made  
 4. have made

Question ID : 26433072732  
Status : Answered  
Chosen Option : 4

**Q.8** Select the INCORRECTLY spelt word.

- Ans**  1. Gaiety  
 2. Neigh  
 3. Mischivious  
 4. Inoculate

Question ID : 26433073602  
Status : Not Answered  
Chosen Option : --

**Q.9** Select the most appropriate set of words to complete the sentence.

While teaching my son how to drive a car, I told him if he didn't hit the \_\_\_\_\_ in time he would \_\_\_\_\_ the car's side mirror.

- Ans
- 1. break; break
  - 2. brake; break
  - 3. brake; brake
  - 4. break; brake

Question ID : 26433088872  
Status : Answered  
Chosen Option : 2

**Q.10** Select the correct option to substitute the underlined segment in the given sentence.  
Many people across the globe have been effected by the pandemic.

- Ans
- 1. have affected
  - 2. have been affected
  - 3. have effected
  - 4. has been effected

Question ID : 26433092995  
Status : Not Answered  
Chosen Option : --

**Q.11** Select the most appropriate meaning of the given idiom.

**Sow wild oats**

- Ans
- 1. Engaging in fighting
  - 2. Engaging in planning
  - 3. Engaging in disobedience
  - 4. Engaging in rebelliousness or promiscuity

Question ID : 26433072280  
Status : Not Answered  
Chosen Option : --

**Q.12** Identify the correctly spelt sentence.

- Ans
- 1. The water cycle is a circular process.
  - 2. The water cycle is a circuler proces.
  - 3. The water cycle is a circqlar process.
  - 4. The water cycle is a circular proces.

Question ID : 26433072828  
Status : Answered  
Chosen Option : 1

Q.13 Select the most appropriate ANTONYM of the given word.  
Rare

- Ans  1. Usual  
 2. Careless  
 3. Discreet  
 4. Unique

Question ID : 26433086345  
Status : Answered  
Chosen Option : 1

Q.14 Select the most appropriate ANTONYM of the given word.

Propagate

- Ans  1. Disseminate  
 2. Spread  
 3. Communicate  
 4. Deplete

Question ID : 26433073573  
Status : Not Answered  
Chosen Option : --

Q.15 Select the most appropriate option that can substitute the underlined segment in the given sentence.

The reported alarm of the earthquake scared every citizen of the country.

- Ans  1. alarming report  
 2. alarmed report  
 3. reporting alarm  
 4. alarm reporting

Question ID : 26433088165  
Status : Answered  
Chosen Option : 3

**Comprehension:**

In the following passage, some words have been deleted. Read the passage carefully and select the most appropriate option to fill in each blank.

Humans have (1)\_\_\_\_\_ that animals do not have a life and maybe exploited in any way they see fit, but this (2)\_\_\_\_\_ is incorrect and must be altered before it is too late. We fail to recognise that the pain we (3)\_\_\_\_\_ on animals will come back to haunt us, and no matter how (4)\_\_\_\_\_ the discovery we make by causing harm to animals, it will be futile. It can never (5)\_\_\_\_\_ the human actions.

**SubQuestion No : 16**

**Q.16 Select the most appropriate option to fill in blank number 1.**

- Ans
- 1. assigned
  - 2. claimed
  - 3. assumed
  - 4. pretended

Question ID : 26433061001

Status : Not Answered

Chosen Option : --

**Comprehension:**

In the following passage, some words have been deleted. Read the passage carefully and select the most appropriate option to fill in each blank.

Humans have (1)\_\_\_\_\_ that animals do not have a life and maybe exploited in any way they see fit, but this (2)\_\_\_\_\_ is incorrect and must be altered before it is too late. We fail to recognise that the pain we (3)\_\_\_\_\_ on animals will come back to haunt us, and no matter how (4)\_\_\_\_\_ the discovery we make by causing harm to animals, it will be futile. It can never (5)\_\_\_\_\_ the human actions.

**SubQuestion No : 17**

**Q.17 Select the most appropriate option to fill in blank number 2.**

- Ans
- 1. perspective
  - 2. fact
  - 3. data
  - 4. superstition

Question ID : 26433061002

Status : Not Answered

Chosen Option : --

**Comprehension:**

In the following passage, some words have been deleted. Read the passage carefully and select the most appropriate option to fill in each blank.

Humans have (1)\_\_\_\_\_ that animals do not have a life and maybe exploited in any way they see fit, but this (2)\_\_\_\_\_ is incorrect and must be altered before it is too late. We fail to recognise that the pain we (3)\_\_\_\_\_ on animals will come back to haunt us, and no matter how (4)\_\_\_\_\_ the discovery we make by causing harm to animals, it will be futile. It can never (5)\_\_\_\_\_ the human actions.

**SubQuestion No : 18**

**Q.18 Select the most appropriate option to fill in blank number 3.**

- Ans
- 1. convict
  - 2. afflict
  - 3. conflict
  - 4. inflict

Question ID : 26433061003

Status : Not Answered

Chosen Option : --

**Comprehension:**

In the following passage, some words have been deleted. Read the passage carefully and select the most appropriate option to fill in each blank.

Humans have (1)\_\_\_\_\_ that animals do not have a life and maybe exploited in any way they see fit, but this (2)\_\_\_\_\_ is incorrect and must be altered before it is too late. We fail to recognise that the pain we (3)\_\_\_\_\_ on animals will come back to haunt us, and no matter how (4)\_\_\_\_\_ the discovery we make by causing harm to animals, it will be futile. It can never (5)\_\_\_\_\_ the human actions.

**SubQuestion No : 19**

**Q.19 Select the most appropriate option to fill in blank number 4.**

- Ans
- 1. bad
  - 2. limited
  - 3. painful
  - 4. significant

Question ID : 26433061004

Status : Not Answered

Chosen Option : --

**Comprehension:**

In the following passage, some words have been deleted. Read the passage carefully and select the most appropriate option to fill in each blank.

Humans have (1)\_\_\_\_\_ that animals do not have a life and maybe exploited in any way they see fit, but this (2)\_\_\_\_\_ is incorrect and must be altered before it is too late. We fail to recognise that the pain we (3)\_\_\_\_\_ on animals will come back to haunt us, and no matter how (4)\_\_\_\_\_ the discovery we make by causing harm to animals, it will be futile. It can never (5)\_\_\_\_\_ the human actions.

SubQuestion No : 20

Q.20 Select the most appropriate option to fill in blank number 5.

- Ans  1. specify  
 2. justify  
 3. nullify  
 4. classify

Question ID : 26433061005  
Status : Not Answered  
Chosen Option : --

Section : Part-D-Hindi

Q.1 निम्नलिखित वाक्य के किस खंड में त्रुटि है?  
'मुझे भारी दुःख हुआ।'

- Ans  1. हुआ  
 2. दुःख  
 3. मुझे  
 4. भारी

Question ID : 26433066758  
Status : Not Answered  
Chosen Option : --

Q.2 निम्नलिखित वाक्य की पूर्ति उचित कर्ता कारक चिह्न से करें।  
'सोहन \_\_\_\_\_ घर का सारा काम किया है।'

- Ans  1. ने  
 2. पर  
 3. में  
 4. से

Question ID : 26433085029  
Status : Not Answered  
Chosen Option : --

Q.3 'फूल किसे नहीं भाते हैं!'  
उपरोक्त वाक्य में रेखांकित शब्द के उचित पर्यायवाची शब्द का चयन कीजिए।

- Ans  1. रसाल  
 2. कुसुम  
 3. अवनी  
 4. कांता

Question ID : 26433079618  
Status : Not Answered  
Chosen Option : --

Q.4 निम्नलिखित शब्दों में से कौन सा शब्द अनेकार्थी शब्द है?

- Ans  1. पोत  
 2. रेलगाड़ी  
 3. जहाज  
 4. हवाई जहाज

Question ID : 26433091320  
Status : Not Answered  
Chosen Option : --

Q.5 "अक्षदा उपवन में टहलने गई थी।"  
उपर्युक्त वाक्य को संदिग्ध वर्तमान काल का प्रयोग कर पुनः लिखिए।

- Ans  1. अक्षदा उपवन में टहलने गई।  
 2. अक्षदा उपवन में टहल रही थी।  
 3. अक्षदा उपवन में टहलने गई होगी।  
 4. अक्षदा उपवन में टहलने जा रही है।

Question ID : 26433066982  
Status : Not Answered  
Chosen Option : --

Q.6 निम्नलिखित वाक्यांश के लिए उपयुक्त सार्थक शब्द क्या होगा?  
आयु में बड़ा व्यक्ति

- Ans  1. पूजनीय  
 2. ज्येष्ठ  
 3. श्रेष्ठ  
 4. महान

Question ID : 26433065758  
Status : Not Answered  
Chosen Option : --

Q.7 रेखांकित शब्द-समूह के लिए सर्वाधिक उपयुक्त विकल्प चुनें।  
राजभवन के अंदर महिलाओं का निवास है।

- Ans  1. स्त्रियावास  
 2. अंतःपुर  
 3. स्त्रीपुर  
 4. आवास

Question ID : 26433062279  
Status : Not Answered  
Chosen Option : --

Q.8 दिए गए वाक्यों में से किस वाक्य में सही विभक्ति चिह्न का प्रयोग नहीं हुआ है?

- Ans  1. गर्मियों की छुट्टियाँ शुरू होने वाली थीं।  
 2. रोहन हवाई जहाज़ से मुम्बई जायेगा।  
 3. कोच्चि में रामानुजन पर मौसी रहती हैं।  
 4. सौम्या के नाना का घर देहरादून में है।

Question ID : 26433074408  
Status : Not Answered  
Chosen Option : --

Q.9 निम्नलिखित वाक्य के रिक्त स्थान में सबसे उपयुक्त मुहावरा क्या होगा?  
'रेल दुर्घटना में दुर्गा \_\_\_\_\_ बच गई।'

- Ans  1. पानी पानी  
 2. नौ-दो  
 3. एक-एक  
 4. बाल-बाल

Question ID : 26433066723  
Status : Not Answered  
Chosen Option : --

Q.10 निम्नलिखित वाक्य के किस खंड में त्रुटि है?  
'सच में क्या तुम्हें प्रथम स्थान मिला है?'

- Ans  1. मिला है?  
 2. क्या तुम्हें  
 3. सच में  
 4. प्रथम स्थान

Question ID : 26433066755  
Status : Not Answered  
Chosen Option : --



Q.11 'अंजुमन हँस रही थी।' इस वाक्य का सकर्मक क्रिया में रूपांतरण होगा -

- Ans
- 1. अंजुमन हँस कर चली गई।
  - 2. नैना अंजुमन को हँसा रही है।
  - 3. अंजुमन हँसती है।
  - 4. अंजुमन से हँसा नहीं जाता।

Question ID : 26433062322  
Status : Not Answered  
Chosen Option : --

Q.12 वाक्य में रेखांकित मुहावरे का उपयुक्त अर्थ दिए गए विकल्पों में से चुनिए- वह तो हरदम लंगर-लंगोट कसकर तैयार रहता है।

- Ans
- 1. स्वागत को तैयार होना
  - 2. काम करने को तैयार होना
  - 3. लड़ने को तैयार होना
  - 4. जाने को तैयार होना

Question ID : 26433062309  
Status : Not Answered  
Chosen Option : --

Q.13 विकल्पों में से किस वाक्य में नीचे दिए गए शब्द के उपयुक्त विलोम शब्द का प्रयोग हुआ है? अवनति

- Ans
- 1. भारत में आर्थिक जागृति हो रही है।
  - 2. अपने देश में शारीरिक दुर्बलता हो रही है।
  - 3. भारत में आर्थिक विसंगति हो रही है।
  - 4. भारत में आर्थिक उन्नति हो रही है।

Question ID : 26433066944  
Status : Not Answered  
Chosen Option : --

Q.14 'बिना वेतन के काम करने वाला' वाक्यांश के लिए उचित शब्द बताइए -

- Ans
- 1. वैतनिक
  - 2. सवैतनिक
  - 3. अवैतनिक
  - 4. निवैतनिक

Question ID : 26433065910  
Status : Not Answered  
Chosen Option : --

Q.15 इनमें से क्या 'महावीर' का अर्थ नहीं है?

- Ans
- 1. जैन तीर्थंकर
  - 2. महादेव
  - 3. हनुमान
  - 4. शक्तिशाली

Question ID : 26433080940

Status : Not Answered

Chosen Option : --

**Comprehension:**

निम्नलिखित गद्यांश में कुछ शब्दों को हटा दिया गया है। दिए गए विकल्पों की सहायता से रिक्त स्थानों की पूर्ति कीजिए। प्रत्येक संख्या के लिए सबसे उपयुक्त विकल्प का चयन कीजिए।  
संसार के सभी महापुरुष 1. \_\_\_\_\_ के कारण ही महान बने हैं। राम ने 2. \_\_\_\_\_ भटक कर लंका पर विजय प्राप्त की थी। 3. \_\_\_\_\_ ने मराठों को एकत्रित करके हिन्दुओं की रक्षा की थी। कोलंबस ने स्वावलंबन से ही 4. \_\_\_\_\_ की खोज की थी। स्वावलंबन का गुण वैसे तो किसी भी आयु में हो सकता है परन्तु यह बालकों में शीघ्र उत्पन्न किया जा सकता है। यह चरित्र में विकास की 5. \_\_\_\_\_ है।

SubQuestion No : 16

Q.16 रिक्त स्थान 1 की पूर्ति के लिए सबसे उपयुक्त विकल्प का चयन करें।

- Ans
- 1. सुस्त
  - 2. स्वावलंबन
  - 3. आलसी
  - 4. काहिल

Question ID : 264330110915

Status : Not Answered

Chosen Option : --

**Comprehension:**

निम्नलिखित गद्यांश में कुछ शब्दों को हटा दिया गया है। दिए गए विकल्पों की सहायता से रिक्त स्थानों की पूर्ति कीजिए। प्रत्येक संख्या के लिए सबसे उपयुक्त विकल्प का चयन कीजिए।  
संसार के सभी महापुरुष 1. \_\_\_\_\_ के कारण ही महान बने हैं। राम ने 2. \_\_\_\_\_ भटक कर लंका पर विजय प्राप्त की थी। 3. \_\_\_\_\_ ने मराठों को एकत्रित करके हिन्दुओं की रक्षा की थी। कोलंबस ने स्वावलंबन से ही 4. \_\_\_\_\_ की खोज की थी। स्वावलंबन का गुण वैसे तो किसी भी आयु में हो सकता है परन्तु यह बालकों में शीघ्र उत्पन्न किया जा सकता है। यह चरित्र में विकास की 5. \_\_\_\_\_ है।

SubQuestion No : 17

Q.17 रिक्त स्थान 2 की पूर्ति के लिए सबसे उपयुक्त विकल्प का चयन करें।

- Ans
- 1. तन-मन
  - 2. कण-कण
  - 3. वन-वन
  - 4. वन-वान

Question ID : 264330110916

Status : Not Answered

Chosen Option : --

**Comprehension:**

निम्नलिखित गद्यांश में कुछ शब्दों को हटा दिया गया है। दिए गए विकल्पों की सहायता से रिक्त स्थानों की पूर्ति कीजिए। प्रत्येक संख्या के लिए सबसे उपयुक्त विकल्प का चयन कीजिए।  
संसार के सभी महापुरुष 1. \_\_\_\_\_ के कारण ही महान बने हैं। राम ने 2. \_\_\_\_\_ भटक कर लंका पर विजय प्राप्त की थी। 3. \_\_\_\_\_ ने मराठों को एकत्रित करके हिन्दुओं की रक्षा की थी। कोलंबस ने स्वावलंबन से ही 4. \_\_\_\_\_ की खोज की थी। स्वावलंबन का गुण वैसे तो किसी भी आयु में हो सकता है परन्तु यह बालकों में शीघ्र उत्पन्न किया जा सकता है। यह चरित्र में विकास की 5. \_\_\_\_\_ है।

**SubQuestion No : 18**

Q.18 रिक्त स्थान 3 की पूर्ति के लिए सबसे उपयुक्त विकल्प का चयन करें।

- Ans
- 1. बालाजी विश्वनाथ
  - 2. बाजी प्रभु देशपांडे
  - 3. बाजीराव
  - 4. छत्रपति शिवाजी

Question ID : 264330110917

Status : Not Answered

Chosen Option : --

**Comprehension:**

निम्नलिखित गद्यांश में कुछ शब्दों को हटा दिया गया है। दिए गए विकल्पों की सहायता से रिक्त स्थानों की पूर्ति कीजिए। प्रत्येक संख्या के लिए सबसे उपयुक्त विकल्प का चयन कीजिए।  
संसार के सभी महापुरुष 1. \_\_\_\_\_ के कारण ही महान बने हैं। राम ने 2. \_\_\_\_\_ भटक कर लंका पर विजय प्राप्त की थी। 3. \_\_\_\_\_ ने मराठों को एकत्रित करके हिन्दुओं की रक्षा की थी। कोलंबस ने स्वावलंबन से ही 4. \_\_\_\_\_ की खोज की थी। स्वावलंबन का गुण वैसे तो किसी भी आयु में हो सकता है परन्तु यह बालकों में शीघ्र उत्पन्न किया जा सकता है। यह चरित्र में विकास की 5. \_\_\_\_\_ है।

**SubQuestion No : 19**

Q.19 रिक्त स्थान 4 की पूर्ति के लिए सबसे उपयुक्त विकल्प का चयन करें।

- Ans
- 1. अमेरिका
  - 2. रूस
  - 3. भारत
  - 4. अफ्रीका

Question ID : 264330110918

Status : Not Answered

Chosen Option : --

**Comprehension:**

निम्नलिखित गद्यांश में कुछ शब्दों को हटा दिया गया है। दिए गए विकल्पों की सहायता से रिक्त स्थानों की पूर्ति कीजिए। प्रत्येक संख्या के लिए सबसे उपयुक्त विकल्प का चयन कीजिए।  
संसार के सभी महापुरुष 1. \_\_\_\_\_ के कारण ही महान बने हैं। राम ने 2. \_\_\_\_\_ भटक कर लंका पर विजय प्राप्त की थी। 3. \_\_\_\_\_ ने मराठों को एकत्रित करके हिन्दुओं की रक्षा की थी। कोलंबस ने स्वावलंबन से ही 4. \_\_\_\_\_ की खोज की थी। स्वावलंबन का गुण वैसे तो किसी भी आयु में हो सकता है परन्तु यह बालकों में शीघ्र उत्पन्न किया जा सकता है। यह चरित्र में विकास की 5. \_\_\_\_\_ है।

**SubQuestion No : 20**

**Q.20** रिक्त स्थान 5 की पूर्ति के लिए सबसे उपयुक्त विकल्प का चयन करें।

- Ans**  1. प्रथम सीढ़ी  
 2. चतुर्थ सीढ़ी  
 3. द्वितीय सीढ़ी  
 4. तृतीय सीढ़ी

Question ID : 264330110919

Status : Not Answered

Chosen Option : --

KD Job Updates

# Constable GD in CAPFs SSF Rifleman GD in Assam Rifles and Sepoy in NCB Examination 2022

Roll Number	<b>KD Job Updates</b>
Candidate Name	<b>KD Job Updates</b>
Venue Name	iON Digital Zone iDZ 1 Sector 62
Exam Date	31/01/2023
Exam Time	5:15 PM - 6:15 PM
Subject	Constable GD Examination 2022

## Section : Part-A-General Intelligence and Reasoning

Q.1 Which number will replace the question mark (?) in the following series?

7, 21, 35, ?, 63

- Ans
- 1. 40
  - 2. 50
  - 3. 62
  - 4. 49

Question ID : 26433067839

Status : Answered

Chosen Option : 4

Q.2 Which of the following numbers will replace the question mark (?) in the given series?

235, 271, ?, 349, 391, 435

- Ans
- 1. 311
  - 2. 307
  - 3. 313
  - 4. 309

Question ID : 26433069395

Status : Answered

Chosen Option : 4

Q.3 Which option represents the correct order of the given words as they would appear in the English dictionary?

- 1 Fountain
- 2 Found
- 3 Fond
- 4 Focus
- 5 Follow

- Ans
- 1. 4,5,1,2,3
  - 2. 4,5,3,2,1
  - 3. 5,4,3,2,1
  - 4. 4,3,5,1,2

Question ID : 26433069282

Status : Answered

Chosen Option : 2

Q.4 Which of the mathematical signs should be interchanged in the below equation to make it mathematically correct?

$$17 + 98 \div 14 - 8 \times 68 = 179$$

- Ans
- 1. + and  $\times$
  - 2. + and -
  - 3.  $\div$  and  $\times$
  - 4. + and  $\div$

Question ID : 264330117490

Status : **Not Attempted and Marked For Review**

Chosen Option : --

Q.5 Which two signs should be interchanged to make the below equation mathematically correct?

$$120 \div 15 + 60 - 4 \times 2 = 135$$

- Ans
- 1. + and  $\times$
  - 2.  $\div$  and -
  - 3.  $\div$  and  $\times$
  - 4.  $\times$  and -

Question ID : 264330114194

Status : **Not Attempted and Marked For Review**

Chosen Option : --

Q.6 In a certain code language, 'EARTH' is written as 'AERHT' and 'VENUS' is written as 'EVNSU'. How will 'PLANT' be written in that language?

- Ans
- 1. LPATN
  - 2. LPTAN
  - 3. LAPT N
  - 4. LPANT

Question ID : 26433068225

Status : **Answered**

Chosen Option : 1

**Q.7** Read the given statements and conclusions carefully. Assuming that the information given in the statements is true, even if it appears to be at variance with commonly known facts, decide which of the given conclusions logically follow(s) from the statements.

**STATEMENTS:**

- A. All boxes are pans.
- B. Some boxes are jugs.
- C. Some jugs are glasses.

**CONCLUSIONS:**

- I. Some glasses are boxes.
- II. No glass is a box.
- III. Some jugs are pans.

- Ans**
- 1. Only conclusion I follows.
  - 2. Both conclusions I and II follow.
  - 3. All three conclusions follow.
  - 4. Only conclusion III follows.

Question ID : 26433081634

Status : Not Answered

Chosen Option : --

**Q.8** Select the option that is related to the fifth letter-cluster in the same way as the second letter-cluster is related to the first letter-cluster and the fourth letter-cluster is related to the third letter-cluster.

PJM : LHM :: NSV : UQK :: JTW : ?

- Ans**
- 1. VPG
  - 2. USH
  - 3. WRG
  - 4. VRG

Question ID : 26433057715

Status : Answered

Chosen Option : 4

**Q.9** 8 friends A, B, C, D, E, F, G, and H are sitting around a circular table facing the centre. A is the immediate neighbour of B and C. H is the immediate neighbour of F and G. D is sitting to the immediate left of B. E is sitting to the immediate right of C. A and H are sitting opposite each other. Who is sitting immediate right of B?

- Ans**
- 1. A
  - 2. F
  - 3. H
  - 4. E

Question ID : 26433080435

Status : Answered

Chosen Option : 1

Q.10 Anil, Bunty, Choubey, Dishant, and Eshan are five students sitting around a circular table facing the centre. Dishant sits to the immediate right of Anil. Choubey is not sitting next to Dishant or Anil. Eshan is sitting to the immediate right of Choubey. Who is sitting to the immediate right of Dishant?

- Ans  1. Bunty  
 2. Anil  
 3. Choubey  
 4. Eshan

Question ID : 264330114207  
Status : Answered  
Chosen Option : 1

Q.11 Select the set in which the numbers are related in the same way as are the numbers of the following sets.

(NOTE : Operations should be performed on the whole numbers, without breaking down the numbers into its constituent digits. E.g. 13 – Operations on 13 such as adding/subtracting/multiplying etc. to 13 can be performed. Breaking down 13 into 1 and 3 and then performing mathematical operations on 1 and 3 is not allowed)  
(13, 150, 17)  
(10, 130, 16)

- Ans  1. (8, 135, 19)  
 2. (11, 150, 15)  
 3. (12, 116, 17)  
 4. (11, 110, 19)

Question ID : 26433076543  
Status : Answered  
Chosen Option : 2

Q.12 Which of the following letter-clusters will replace the question mark (?) and complete the following letter-cluster series?  
EU, CS, YQ, SO, ?

- Ans  1. KE  
 2. KM  
 3. KL  
 4. JM

Question ID : 26433067297  
Status : Answered  
Chosen Option : 2



Q.13 Which figure should replace the question mark (?) if the series were to be continued?

P I C T E R	R E I C T P	I R E P C T	T C R E P I	?
-------------	-------------	-------------	-------------	---

Ans

✗ 1. R T C P I E

✗ 2. I T C R E P

✗ 3. C R E P I T

✓ 4. R T C I E P

Question ID : 26433076634

Status : Not Attempted and Marked For Review

Chosen Option : --

Q.14 'A – B' means 'B is the mother of A'  
'A # B' means 'B is the sister of A'  
'A \$ B' means 'B is the husband of A'  
If A – B # C – D \$ E, then how is E related to A?

Ans ✗ 1. Husband

✓ 2. Mother's father

✗ 3. Mother's brother

✗ 4. Father

Question ID : 26433068530

Status : Answered

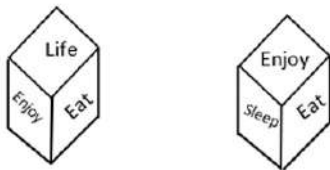
Chosen Option : 2

**Q.15** Select the option that is related to the third word in the same way as the second word is related to the first word. (The words must be considered as meaningful English words and must not be related to each other based on the number of letters/number of consonants/vowels in the word.)  
Slavery : Liberty :: Hate : ?

- Ans
- 1. Person
  - 2. Marriage
  - 3. Swim
  - 4. Love

Question ID : 26433069579  
Status : Answered  
Chosen Option : 4

**Q.16** Two different positions of the same dice are shown having six different words – Life, Eat, Enjoy, Sleep, Love and Care. Find the word on the face opposite the face showing 'Life'.



- Ans
- 1. Enjoy
  - 2. Love
  - 3. Sleep
  - 4. Care

Question ID : 26433085523  
Status : Answered  
Chosen Option : 3

**Q.17** Which letter-cluster will replace the question mark (?) to complete the given series?  
PBXJ, TFJX, ?, BNJX, FRXJ

- Ans
- 1. WKJX
  - 2. VKJX
  - 3. VLXJ
  - 4. XJXJ

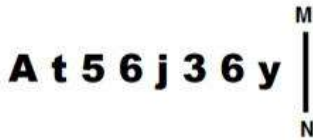
Question ID : 26433068037  
Status : Answered  
Chosen Option : 4

**Q.18** In a certain code language, 'cat pen' is coded 'tin de', 'animal tiger' is coded as 'sin xe', and 'pen tiger' is coded as 'de xe', What is the code word for 'cat'?

- Ans
- 1. xe
  - 2. pen
  - 3. tin
  - 4. de

Question ID : 26433079364  
Status : Answered  
Chosen Option : 3

Q.19 Select the Correct mirror image of the given figure when the figure is placed at MN as shown below.



Ans

✗ 1. y j 3 6 j 5 t A

✓ 2. y 6 3 j 6 t A

✗ 3. y 6 3 j 6 t A

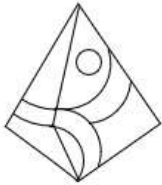
✗ 4. y 6 3 j 6 t A

Question ID : 26433082328

Status : Answered

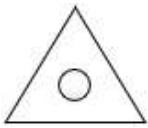
Chosen Option : 2

Q.20 Select the option figure which is embedded in the given figure. (Rotation is NOT allowed)

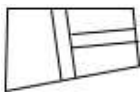


Ans

✗ 1.



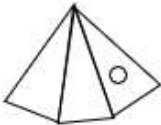
✗ 2.



✓ 3.



✗ 4.



Question ID : 26433069332

Status : Answered

Chosen Option : 3

**Q.1 What is the SI unit of the electric potential difference?**

- Ans
- 1. Watt
  - 2. Ampere
  - 3. Joules
  - 4. Volt

Question ID : 26433089646  
Status : Answered  
Chosen Option : 4

**Q.2 Name the movement that started at Naxalbari in Darjeeling district in West Bengal in 1967.**

- Ans
- 1. The Bhoodan Movement
  - 2. The Chipko movement
  - 3. The Quit India Movement
  - 4. The Naxalite Movement

Question ID : 264330115686  
Status : Marked For Review  
Chosen Option : 1

**Q.3 Sudip Roy Barman became Member of Legislative Assembly from \_\_\_\_\_ constituency in June 2022.**

- Ans
- 1. Mysore
  - 2. Bilaspur
  - 3. Hajipur
  - 4. Agartala

Question ID : 264330114913  
Status : Not Answered  
Chosen Option : --

**Q.4 During which season do North-east trade winds dominate India?**

- Ans
- 1. Autumn
  - 2. Monsoon
  - 3. Summer
  - 4. Winter

Question ID : 264330115979  
Status : Not Attempted and Marked For Review  
Chosen Option : --

Q.5 Which of the following is a summer cropping season in India?

- Ans  1. zaid  
 2. monsoon  
 3. kharif  
 4. rabi

Question ID : 264330115524  
Status : Answered  
Chosen Option : 3

Q.6 Which of the following Union Territories does NOT have a lieutenant governor?

- Ans  1. New Delhi  
 2. Daman and Diu  
 3. Andaman and Nicobar Islands  
 4. Puducherry

Question ID : 26433086832  
Status : Marked For Review  
Chosen Option : 3

Q.7 Name the disorder tied to body image distortion in adolescence.

- Ans  1. schizophrenia  
 2. depression  
 3. Alzheimer's disease  
 4. anorexia nervosa

Question ID : 264330115224  
Status : Answered  
Chosen Option : 1

Q.8 What was the birth rate of India in 2017?

- Ans  1. 26.4  
 2. 16.6  
 3. 24.8  
 4. 20.2

Question ID : 264330116136  
Status : Not Answered  
Chosen Option : --

Q.9 Who among the following players received the Arjuna Award for the year 2001?

- Ans  1. Prashanti Singh  
 2. Sarabjeet Singh  
 3. Manmohan Singh Lodhi  
 4. Parminder Singh

Question ID : 26433089921  
Status : Not Answered  
Chosen Option : --

Q.10 A situation in which the government may spend an amount equal to the revenue it collects is :

- Ans  1. deficit budget  
 2. balanced budget  
 3. surplus budget  
 4. capital budget

Question ID : 264330115277  
Status : Answered  
Chosen Option : 2

Q.11 The central theme of which of the following classical dance forms are the love stories of Krishna and Radha?

- Ans  1. Odissi  
 2. Sattriya  
 3. Kuchipudi  
 4. Manipuri

Question ID : 264330115063  
Status : Not Attempted and Marked For Review  
Chosen Option : --

Q.12 Who among the following Mauryan emperors was known by the name of Piyadassi?

- Ans  1. Bindusara  
 2. Dasaratha  
 3. Ashoka  
 4. Brihadratha

Question ID : 264330115451  
Status : Answered  
Chosen Option : 3

Q.13 Startup India Seed Fund Scheme (SISFS) was launched by \_\_\_\_\_ on 19th April 2021.

- Ans  1. Narendra Modi  
 2. Smriti Irani  
 3. Piyush Goyal  
 4. Amit Shah

Question ID : 264330116187  
Status : Not Answered  
Chosen Option : --

Q.14 Geographically, which is the smallest state of India?

- Ans  1. Mizoram  
 2. Goa  
 3. Tripura  
 4. Sikkim

Question ID : 264330116050  
Status : Answered  
Chosen Option : 4

Q.15 The Halda festival is primarily celebrated in which of the following states of India?

- Ans  1. Andhra Pradesh  
 2. West Bengal  
 3. Himachal Pradesh  
 4. Rajasthan

Question ID : 26433094884  
Status : Not Answered  
Chosen Option : --

Q.16 In which year was the Target Olympic Podium Scheme (TOPS) established by the Ministry of Youth Affairs and Sports?

- Ans  1. 2016  
 2. 2014  
 3. 2012  
 4. 2018

Question ID : 26433092326  
Status : Answered  
Chosen Option : 4

Q.17 Yamini Krishnamurthy has won various accolades in which form of dance?

- Ans  1. Kathak and Kuchipudi  
 2. Bharatanatyam and Mohiniattam  
 3. Kuchipudi and Mohiniattam  
 4. Kuchipudi and Bharatanatyam

Question ID : 264330115841  
Status : Answered  
Chosen Option : 2

Q.18 The main focus of the First Five Year Plan was to develop the \_\_\_\_\_ sector like agriculture.

- Ans
- 1. primary
  - 2. tertiary
  - 3. secondary
  - 4. multi

Question ID : 264330115379  
Status : Answered  
Chosen Option : 1

Q.19 How many Fundamental rights are provided by Indian Constitution?

- Ans
- 1. 7
  - 2. 8
  - 3. 5
  - 4. 6

Question ID : 264330115612  
Status : Answered  
Chosen Option : 4

Q.20 Who has been appointed as India's next High Commissioner to Canada in September 2022?

- Ans
- 1. Gopal Baglay
  - 2. Sanjay Kumar Verma
  - 3. Pranay Kumar Verma
  - 4. Prabhat Prakash Shukla

Question ID : 264330114980  
Status : Answered  
Chosen Option : 2

Section : Part-C-Elementary Mathematics

Q.1 If  $2P = 3Q = 5R$  and  $P + Q + R = 6200$ , then the difference between P and R is:

- Ans
- 1. 3000
  - 2. 2000
  - 3. 1200
  - 4. 1800

Question ID : 26433075491  
Status : Answered  
Chosen Option : 4



**Q.2** Anil and Bablu can do a given piece of work in 50 days, Bablu and Candy can do the same work in 60 days, and Anil, Bablu, and Candy complete it in 30 days. Find the number of days required by Bablu to finish the total work.

- Ans
- 1. 400 days
  - 2. 450 days
  - 3. 550 days
  - 4. 300 days

Question ID : 264330116871  
Status : Answered  
Chosen Option : 4

**Q.3** From place A to B, which are 50 km apart, T covers half of the distance in 20 minutes. What should be his speed (in km/h) in the second half so that his average speed from A to B is 80 km/h?

- Ans
- 1. 57.8
  - 2. 87.5
  - 3. 75.8
  - 4. 85.7

Question ID : 26433071260  
Status : Answered  
Chosen Option : 2

**Q.4** A buys 150 gm gold for Rs.6,00,000 and gives 6% as making charges. What should be the selling price per 10 gm to have a profit of 6%?

- Ans
- 1. Rs.49,444
  - 2. Rs.44,449
  - 3. Rs.44,494
  - 4. Rs.44,944

Question ID : 26433071254  
Status : Answered  
Chosen Option : 1

**Q.5** The population of a country increases by 8% in the first year, depreciates by 10% in the second year and again increases by 6% in the third year. If the present population is 6 crore, find the population growth after 3 years.

- Ans
- 1. 18,19,200
  - 2. 18,99,500
  - 3. 19,19,200
  - 4. 20,35,000

Question ID : 26433075118  
Status : Answered  
Chosen Option : 1

Q.6 A lady spends 20 percent of her total income on house rent, and 75 percent of the rest on household items. If she saves ₹600, then what is her income?

- Ans
- 1. ₹2,000
  - 2. ₹1500
  - 3. ₹4,000
  - 4. ₹3,000

Question ID : 26433079853  
Status : Answered  
Chosen Option : 4

Q.7 Due to delay in submission of an assignment the marks of Suhani were decreased by 10 percent and she got 135 marks. What could have been her marks in the assignment, if there was no delay in submission?

- Ans
- 1. 145
  - 2. 155
  - 3. 150
  - 4. 140

Question ID : 264330116791  
Status : Answered  
Chosen Option : 3

Q.8 An aeroplane flies along the four sides of a square field at the speeds of 150 km/h, 300 km/h, 450 km/h and 600 km/h. Find the average speed of the plane around the field.

- Ans
- 1. 350 km/h
  - 2. 288 km/h
  - 3. 228 km/h
  - 4. 225 km/h

Question ID : 26433073035  
Status : Answered  
Chosen Option : 1

Q.9 The average of the following numbers is 25. Find the value of X.  
24, 30, 12, 18, 20, 10, 40, X

- Ans
- 1. 46
  - 2. 48
  - 3. 47
  - 4. 45

Question ID : 264330116684  
Status : Answered  
Chosen Option : 1

Q.10 If a conical vessel has a radius of 4 cm and volume of  $16\pi \text{ cm}^3$ , then its curved surface area is:

- Ans
- 1.  $16\pi \text{ cm}^2$
  - 2.  $4\pi \text{ cm}^2$
  - 3.  $12\pi \text{ cm}^2$
  - 4.  $20\pi \text{ cm}^2$

Question ID : 26433073048  
Status : Answered  
Chosen Option : 4

Q.11 A class teacher conducted a unit test in the class. If out of 30 students, 14 students scored 80 and rest 16 students scored 65, then what is the weighted average score?

- Ans
- 1. 75
  - 2. 70
  - 3. 72
  - 4. 76

Question ID : 26433075640  
Status : Answered  
Chosen Option : 3

Q.12 Find the total surface area of a cylindrical container with lid, whose base diameter is  $k$  cm, and height is  $\frac{k}{2}$  cm (in  $\text{cm}^2$ ).

- Ans
- 1.  $\frac{\pi k^2}{4}$
  - 2.  $\frac{\pi k^2}{2}$
  - 3.  $2\pi k^2$
  - 4.  $\pi k^2$

Question ID : 26433079975  
Status : Answered  
Chosen Option : 1

Q.13 What will be the remainder when  $3^{27}$  is divided by 26?

- Ans
- 1. 1
  - 2. 3
  - 3. 2
  - 4. 0

Question ID : 26433080214  
Status : Answered  
Chosen Option : 1

Q.14 The product of 2 numbers is 1890 and the numbers differ by 3. Find the LCM of the numbers.

- Ans
- 1. 450
  - 2. 540
  - 3. 720
  - 4. 630

Question ID : 264330116630  
Status : Answered  
Chosen Option : 4

Q.15 A and B alone take 4 and 6 hours, respectively, to complete a certain work. If they work alternatively each hour, starting with A first, how long will it take them to complete the work?

- Ans
- 1.  $\frac{11}{3}$  hours
  - 2.  $\frac{14}{3}$  hours
  - 3.  $\frac{17}{3}$  hours
  - 4.  $\frac{13}{3}$  hours

Question ID : 26433076110  
Status : Answered  
Chosen Option : 1

Q.16 Seema purchased a boat that cost her for Rs.3200 and marked price is Rs.4000. How much discount she get ?

- Ans
- 1. Rs. 600
  - 2. Rs. 700
  - 3. Rs. 500
  - 4. Rs. 800

Question ID : 264330116716  
Status : Answered  
Chosen Option : 4

Q.17 The marked price of a product is Rs. 1000. If it is sold at 7 percent discount and the dealer earns 50 percent profit, then what is the cost price of the product?

- Ans
- 1. Rs. 930
  - 2. Rs. 840
  - 3. Rs. 620
  - 4. Rs. 720

Question ID : 264330116756  
Status : Answered  
Chosen Option : 3

Q.18 Find the compound interest on Rs.1,000 at 20% per annum for one year if interest is compounded half-yearly.

- Ans
- 1. Rs.211
  - 2. Rs.210
  - 3. Rs.209
  - 4. Rs.208

Question ID : 26433082980  
Status : Answered  
Chosen Option : 1

Q.19 If  $\frac{a}{6} = \frac{b}{10} = \frac{c}{4}$ , then  $\frac{a+b+c}{a}$  is equal to:

- Ans
- 1.  $\frac{20}{3}$
  - 2. 4
  - 3.  $\frac{10}{3}$
  - 4. 2

Question ID : 26433075813  
Status : Not Answered  
Chosen Option : --

Q.20 By selling 50 fruits, a fruit seller gains the selling price of 10 fruits. Find the gain percentage.

- Ans
- 1. 28%
  - 2. 25%
  - 3. 30%
  - 4. 32%

Question ID : 26433074277  
Status : Answered  
Chosen Option : 2

**Q.1 Select the INCORRECTLY spelt word.**

- Ans  1. Mischief  
 2. Perceive  
 3. Acheive  
 4. Receive

Question ID : 26433072364  
Status : Answered  
Chosen Option : 3

**Q.2 Select the most appropriate meaning of the given idiom.**

**Pull yourself together**

- Ans  1. Brew new problems  
 2. Transform society  
 3. Enervate the downtrodden  
 4. Calm down

Question ID : 26433073994  
Status : Answered  
Chosen Option : 4

**Q.3 Select the most appropriate option to fill in the blank.**

Arun has experienced severe mental and emotional turmoil, as well as interpersonal \_\_\_\_\_ at times.

- Ans  1. dizziness  
 2. symptoms  
 3. numbness  
 4. fatigue

Question ID : 26433073618  
Status : Answered  
Chosen Option : 3

**Q.4 Select the most appropriate synonym of the given word.**

**Early**

- Ans  1. Beforehand  
 2. Complex  
 3. Late  
 4. Tardy

Question ID : 26433088927  
Status : Answered  
Chosen Option : 1

**Q.5** Select the most appropriate **ANTONYM** of the given word.

**Flatter**

- Ans**  1. Soil  
 2. Insult  
 3. Adulate  
 4. Cajole

Question ID : 26433072213  
Status : Answered  
Chosen Option : 2

**Q.6** Select the most appropriate **ANTONYM** of the word given in brackets to fill in the blank.

Watching the singer perform live at the concert \_\_\_\_\_ (alert) the audience for a moment.

- Ans**  1. shunned  
 2. distracted  
 3. called  
 4. summoned

Question ID : 26433092930  
Status : Answered  
Chosen Option : 2

**Q.7** Select the **INCORRECTLY** spelt word.

- Ans**  1. Volunter  
 2. Raisin  
 3. Quotable  
 4. Pamphlet

Question ID : 26433073735  
Status : Answered  
Chosen Option : 1

**Q.8** Select the most appropriate option to fill in the blanks and make the sentence meaningful.

I taught my son the \_\_\_\_\_ way to tie a \_\_\_\_\_.

- Ans**  1. right; not  
 2. write; knot  
 3. right; knot  
 4. write; not

Question ID : 26433092098  
Status : Answered  
Chosen Option : 3

**Q.9** Select the most appropriate option that can substitute the underlined segment in the given sentence. If there is no need to substitute it, select 'No substitution'.  
When I was young, I can memorise lessons faster than Mohan.

- Ans
- 1. I could memorise lessons faster to Mohan
  - 2. I could memorise lessons faster than Mohan
  - 3. No substitution
  - 4. I can memorise lessons faster to Mohan

Question ID : 26433093074  
Status : Answered  
Chosen Option : 2

**Q.10** Select the most appropriate synonym of the given word.

**Obstruct**

- Ans
- 1. Separate
  - 2. Block
  - 3. Magnify
  - 4. Obey

Question ID : 26433073464  
Status : Answered  
Chosen Option : 2

**Q.11** Select the most appropriate option that can substitute the underlined segment in the given sentence.

I was very much surprised to see Mariam at the party.

- Ans
- 1. bowled
  - 2. astonished
  - 3. stalked
  - 4. aghast

Question ID : 26433086461  
Status : Answered  
Chosen Option : 2

**Q.12** Select the most appropriate ANTONYM of the given word.

**Encircle**

- Ans
- 1. Entire
  - 2. Entice
  - 3. Embrace
  - 4. Exclude

Question ID : 26433072207  
Status : Answered  
Chosen Option : 4



Q.13 Select the most appropriate meaning of the underlined idiom in the given sentence.

Even though his car was badly damaged in the accident, Rohan did not turn a hair.

- Ans
- 1. Change the hairstyle
  - 2. Demand compensation
  - 3. Understand anything
  - 4. To show no outward emotion

Question ID : 26433071997  
Status : Answered  
Chosen Option : 4

Q.14 Parts of the following sentence have been given as options. Select the option that contains an error.

Dad, will you get me a box of crayons / on your way home? Teacher told us yesterday, "You must bring / a box of crayons with you to the drawing class./ Or I will not be let you stay in the class."

- Ans
- 1. Or I will not be let you stay in the class".
  - 2. on your way home? Teacher said yesterday, "You must bring
  - 3. Dad, will you get me a box of crayons
  - 4. a box of crayons with you to the drawing class.

Question ID : 26433099126  
Status : Answered  
Chosen Option : 1

Q.15 Select the most appropriate ANTONYM of the word given in brackets to fill in the blank.

Those who have \_\_\_\_\_ (humility) will definitely fall down.

- Ans
- 1. weakness
  - 2. pride
  - 3. disrespect
  - 4. veracity

Question ID : 26433070458  
Status : Answered  
Chosen Option : 4

**Comprehension:**

In the following passage, some words have been deleted. Read the passage carefully and select the most appropriate option to fill in each blank.

Advertising (1) \_\_\_\_\_ initially meant to make people aware of the goods available in the market. It was as simple as announcing what you have in your store or the services you offer on your (2) \_\_\_\_\_. Over the years, advertising has evolved into a major industry that goes beyond informing, persuading and influencing. It is a form of brainwashing consumers. Advertising has become a type of culture with ardent followers. In the process, it attracts enviable attention from manufacturers and service providers who fancy an (3) \_\_\_\_\_ over their competitors. Unfortunately, in keeping with the ever-increasing demands of the manufacturers, the advertisers have resulted in creating unnecessary wants and (4) \_\_\_\_\_ consumption in most of us. This is a craving for harmful products that we are better off without. It (5) \_\_\_\_\_ on our minds rendering us completely irrational. The billboards (hoardings), television and radio advertisements target us from a very early age, forming our view of the world as we grow into adults. The buzzwords in advertising are, 'you are cool and sophisticated' if you use this or that product.

**SubQuestion No : 16**

**Q.16** Select the most appropriate option to fill in blank number 1.

- Ans
- 1. are
  - 2. will
  - 3. is
  - 4. was

Question ID : 26433072023

Status : Answered

Chosen Option : 4

**Comprehension:**

In the following passage, some words have been deleted. Read the passage carefully and select the most appropriate option to fill in each blank.

Advertising (1) \_\_\_\_\_ initially meant to make people aware of the goods available in the market. It was as simple as announcing what you have in your store or the services you offer on your (2) \_\_\_\_\_. Over the years, advertising has evolved into a major industry that goes beyond informing, persuading and influencing. It is a form of brainwashing consumers. Advertising has become a type of culture with ardent followers. In the process, it attracts enviable attention from manufacturers and service providers who fancy an (3) \_\_\_\_\_ over their competitors. Unfortunately, in keeping with the ever-increasing demands of the manufacturers, the advertisers have resulted in creating unnecessary wants and (4) \_\_\_\_\_ consumption in most of us. This is a craving for harmful products that we are better off without. It (5) \_\_\_\_\_ on our minds rendering us completely irrational. The billboards (hoardings), television and radio advertisements target us from a very early age, forming our view of the world as we grow into adults. The buzzwords in advertising are, 'you are cool and sophisticated' if you use this or that product.

**SubQuestion No : 17**

**Q.17** Select the most appropriate option to fill in blank number 2.

- Ans
- 1. estate
  - 2. abode
  - 3. places
  - 4. premises

Question ID : 26433072024

Status : Answered

Chosen Option : 2

**Comprehension:**

In the following passage, some words have been deleted. Read the passage carefully and select the most appropriate option to fill in each blank.

Advertising (1) \_\_\_\_\_ initially meant to make people aware of the goods available in the market. It was as simple as announcing what you have in your store or the services you offer on your (2) \_\_\_\_\_. Over the years, advertising has evolved into a major industry that goes beyond informing, persuading and influencing. It is a form of brainwashing consumers. Advertising has become a type of culture with ardent followers. In the process, it attracts enviable attention from manufacturers and service providers who fancy an (3) \_\_\_\_\_ over their competitors. Unfortunately, in keeping with the ever-increasing demands of the manufacturers, the advertisers have resulted in creating unnecessary wants and (4) \_\_\_\_\_ consumption in most of us. This is a craving for harmful products that we are better off without. It (5) \_\_\_\_\_ on our minds rendering us completely irrational. The billboards (hoardings), television and radio advertisements target us from a very early age, forming our view of the world as we grow into adults. The buzzwords in advertising are, 'you are cool and sophisticated' if you use this or that product.

**SubQuestion No : 18**

**Q.18** Select the most appropriate option to fill in blank number 3.

- Ans  1. edge  
 2. authority  
 3. empire  
 4. mastery

Question ID : 26433072025

Status : Answered

Chosen Option : 1

**Comprehension:**

In the following passage, some words have been deleted. Read the passage carefully and select the most appropriate option to fill in each blank.

Advertising (1) \_\_\_\_\_ initially meant to make people aware of the goods available in the market. It was as simple as announcing what you have in your store or the services you offer on your (2) \_\_\_\_\_. Over the years, advertising has evolved into a major industry that goes beyond informing, persuading and influencing. It is a form of brainwashing consumers. Advertising has become a type of culture with ardent followers. In the process, it attracts enviable attention from manufacturers and service providers who fancy an (3) \_\_\_\_\_ over their competitors. Unfortunately, in keeping with the ever-increasing demands of the manufacturers, the advertisers have resulted in creating unnecessary wants and (4) \_\_\_\_\_ consumption in most of us. This is a craving for harmful products that we are better off without. It (5) \_\_\_\_\_ on our minds rendering us completely irrational. The billboards (hoardings), television and radio advertisements target us from a very early age, forming our view of the world as we grow into adults. The buzzwords in advertising are, 'you are cool and sophisticated' if you use this or that product.

**SubQuestion No : 19**

**Q.19** Select the most appropriate option to fill in blank number 4.

- Ans  1. excess  
 2. unneeded  
 3. redundant  
 4. ample

Question ID : 26433072026

Status : Answered

Chosen Option : 1

**Comprehension:**

In the following passage, some words have been deleted. Read the passage carefully and select the most appropriate option to fill in each blank.

Advertising (1) \_\_\_\_\_ initially meant to make people aware of the goods available in the market. It was as simple as announcing what you have in your store or the services you offer on your (2) \_\_\_\_\_. Over the years, advertising has evolved into a major industry that goes beyond informing, persuading and influencing. It is a form of brainwashing consumers. Advertising has become a type of culture with ardent followers. In the process, it attracts enviable attention from manufacturers and service providers who fancy an (3) \_\_\_\_\_ over their competitors. Unfortunately, in keeping with the ever-increasing demands of the manufacturers, the advertisers have resulted in creating unnecessary wants and (4) \_\_\_\_\_ consumption in most of us. This is a craving for harmful products that we are better off without. It (5) \_\_\_\_\_ on our minds rendering us completely irrational. The billboards (hoardings), television and radio advertisements target us from a very early age, forming our view of the world as we grow into adults. The buzzwords in advertising are, 'you are cool and sophisticated' if you use this or that product.

SubQuestion No : 20

Q.20 Select the most appropriate option to fill in blank number 5.

- Ans
- 1. sacrifices
  - 2. assassinates
  - 3. preys
  - 4. victimises

Question ID : 26433072027

Status : Answered

Chosen Option : 3

Section : Part-D-Hindi

Q.1 'पिताजी ने मिठाई लावेंगे।'  
उपरोक्त वाक्य में त्रुटि पहचानकर वाक्य शुद्ध कीजिए।

- Ans
- 1. पिताजी ने मिठाई लाँगे।
  - 2. पिताजी मिठाई लाँगे।
  - 3. पिताजी मिठाइयाँ लावेंगे।
  - 4. पिताजी ने मिठाई लाए।

Question ID : 26433063045

Status : Not Answered

Chosen Option : --

Q.2 'गंगा' के लिए 'मंदाकिनी' शब्द का प्रयोग होता है। इसके बदले में और क्या शब्द हो सकता है?

- Ans
- 1. देवनदी
  - 2. कलानिधि
  - 3. तरंगिनी
  - 4. सलिल

Question ID : 26433062688

Status : Not Answered

Chosen Option : --

Q.3 जिसका जन्म पहले हुआ हो' वाक्यांश के लिए उचित शब्द बताइए।

- Ans  1. भ्राता  
 2. अग्रज  
 3. प्रथम  
 4. अनुज

Question ID : 26433065903  
Status : Not Answered  
Chosen Option : --

Q.4 निम्न वाक्य में रेखांकित अंश के स्थान पर आने वाले सबसे उपयुक्त विकल्प का चयन कीजिए।  
प्रेम करना तलवार की नोक पर चलना है।

- Ans  1. नाक  
 2. किनारे  
 3. ऊपर  
 4. धार

Question ID : 26433066869  
Status : Not Answered  
Chosen Option : --

Q.5 'राजा महेंद्र ने हाथी पर सवार होकर नगर भ्रमण किया।' निम्नलिखित में से कौन सा शब्द उपरोक्त वाक्य में प्रयुक्त 'हाथी' शब्द का पर्यायवाची नहीं है?

- Ans  1. गज  
 2. करी  
 3. सारंग  
 4. कुंजर

Question ID : 26433069738  
Status : Not Answered  
Chosen Option : --

Q.6 निम्नलिखित विकल्पों में से दिए गए वाक्यांश के लिए उपयुक्त शब्द चुनें।  
भयभीत करने वाला

- Ans  1. त्रिकांडी  
 2. त्रासद  
 3. त्रासक  
 4. त्रिक

Question ID : 26433069994  
Status : Not Answered  
Chosen Option : --

Q.7 'बोलने वाला' वाक्यांश के लिए सार्थक शब्द है-

- Ans
- 1. यायावर
  - 2. विचारक
  - 3. वाणी
  - 4. वक्ता

Question ID : 26433062225  
Status : Not Answered  
Chosen Option : --

Q.8 'मुनाफ़ा' शब्द का विलोम क्या है?

- Ans
- 1. नफ़ा
  - 2. नुक़सान
  - 3. फ़ायदा
  - 4. लाभ

Question ID : 26433067092  
Status : Not Answered  
Chosen Option : --

Q.9 'दंग रह जाना' मुहावरे का क्या अर्थ है?

- Ans
- 1. बहुत हैरान होना
  - 2. बहुत परेशान होना
  - 3. बहुत खुश होना
  - 4. बहुत सताना

Question ID : 26433066806  
Status : Not Answered  
Chosen Option : --

Q.10 निम्न वाक्य में त्रुटि पहचानकर वाक्य शुद्ध कीजिए।  
'मोहन को मिलो और उससे यह बात बताओ।'

- Ans
- 1. मोहन से मिलिए और उनको यह बताओ।
  - 2. मोहन को मिलकर बात बताओ।
  - 3. मोहन से मिलो और उसे यह बात बताओ।
  - 4. मोहन ने मिलकर बात बोली।

Question ID : 26433063036  
Status : Not Answered  
Chosen Option : --

Q.11 निम्नलिखित शब्दों में से कौन सा शब्द अनेकार्थी शब्द है?

- Ans
- 1. भैंस
  - 2. गाय
  - 3. हरिण
  - 4. बंदर

Question ID : 26433091316  
Status : Not Answered  
Chosen Option : --

Q.12 निम्नलिखित मुहावरे के लिए उपयुक्त सार्थक शब्द क्या होगा?  
न जाने ऊंट किस करवट बैठेगा

- Ans
- 1. विश्वास
  - 2. बैठना
  - 3. निराश होना
  - 4. अनिश्चितता

Question ID : 26433065773  
Status : Not Answered  
Chosen Option : --

Q.13 निम्नलिखित में से शुद्ध वर्तनी वाला शब्द कौन-सा है?

- Ans
- 1. अभिनेट
  - 2. अभीनेता
  - 3. अभिनेता
  - 4. अभीनेत्रा

Question ID : 26433066748  
Status : Not Answered  
Chosen Option : --

Q.14 निम्नलिखित में से अशुद्ध वाक्य कौन-सा है?

- Ans
- 1. हम भी धूप और पानी में खड़े हो सकते हैं।
  - 2. साहित्य का आधार जीवन है।
  - 3. सुनैना आज घर आ रही है।
  - 4. बाघ और बकरी एक घाट पर पानी पीती हैं।

Question ID : 26433066991  
Status : Not Answered  
Chosen Option : --

Q.15 निम्नलिखित वाक्य में रेखांकित एकार्थी शब्दों के उपयुक्त अर्थ बताएं।  
शमशेर बहुत ही 'विदुर' व्यक्ति हैं, अफसोस कि वे 'विधुर' हैं।

- Ans  1. ज्ञानी- अज्ञानी  
 2. ज्ञानी- जिसकी पत्नी मर गई हो  
 3. सन्यासी- पंडित  
 4. जिसकी पत्नी मर गई हो- पंडित

Question ID : 26433091330

Status : Not Answered

Chosen Option : --

**Comprehension:**

निम्नलिखित गद्यांश में कुछ शब्दों को हटा दिया गया है। दिए गए विकल्पों की सहायता से रिक्त स्थानों की पूर्ति कीजिए। प्रत्येक संख्या के लिए सबसे उपयुक्त विकल्प का चयन कीजिए।  
मानव जब जोर लगाता है, पत्थर पानी बन जाता है। मनुष्य के पास इतनी 1. \_\_\_\_\_ है कि वह सभी कुछ कर सकता है। इसी भरोसे पर वह अपना और अपने 2. \_\_\_\_\_ का लालन-पालन करता है। समाज में छोटे-बड़े, निर्धन-धनी का होना 3. \_\_\_\_\_ है। समाज में धनवान का आदर होता है जबकि मजदूर को 4. \_\_\_\_\_ समझा जाता है। कड़ी मेहनत के बावजूद उसे वह आदर नहीं मिलता जो एक 5. \_\_\_\_\_ को मिलना चाहिए।

SubQuestion No : 16

Q.16 रिक्त स्थान 1 की पूर्ति के लिए सबसे उपयुक्त विकल्प का चयन कीजिए।

- Ans  1. विषय  
 2. शक्ति  
 3. आदर  
 4. कार्य

Question ID : 264330110975

Status : Not Answered

Chosen Option : --

**Comprehension:**

निम्नलिखित गद्यांश में कुछ शब्दों को हटा दिया गया है। दिए गए विकल्पों की सहायता से रिक्त स्थानों की पूर्ति कीजिए। प्रत्येक संख्या के लिए सबसे उपयुक्त विकल्प का चयन कीजिए।  
मानव जब जोर लगाता है, पत्थर पानी बन जाता है। मनुष्य के पास इतनी 1. \_\_\_\_\_ है कि वह सभी कुछ कर सकता है। इसी भरोसे पर वह अपना और अपने 2. \_\_\_\_\_ का लालन-पालन करता है। समाज में छोटे-बड़े, निर्धन-धनी का होना 3. \_\_\_\_\_ है। समाज में धनवान का आदर होता है जबकि मजदूर को 4. \_\_\_\_\_ समझा जाता है। कड़ी मेहनत के बावजूद उसे वह आदर नहीं मिलता जो एक 5. \_\_\_\_\_ को मिलना चाहिए।

SubQuestion No : 17

Q.17 रिक्त स्थान 2 की पूर्ति के लिए सबसे उपयुक्त विकल्प का चयन कीजिए।

- Ans  1. परिवार  
 2. पड़ोसी  
 3. घर  
 4. आपका

Question ID : 264330110976

Status : Not Answered

Chosen Option : --



**Comprehension:**

निम्नलिखित गद्यांश में कुछ शब्दों को हटा दिया गया है। दिए गए विकल्पों की सहायता से रिक्त स्थानों की पूर्ति कीजिए। प्रत्येक संख्या के लिए सबसे उपयुक्त विकल्प का चयन कीजिए।  
मानव जब जोर लगाता है, पत्थर पानी बन जाता है। मनुष्य के पास इतनी 1. \_\_\_\_\_ है कि वह सभी कुछ कर सकता है। इसी भरोसे पर वह अपना और अपने 2. \_\_\_\_\_ का लालन-पालन करता है। समाज में छोटे-बड़े, निर्धन-धनी का होना 3. \_\_\_\_\_ है। समाज में धनवान का आदर होता है जबकि मज़दूर को 4. \_\_\_\_\_ समझा जाता है। कड़ी मेहनत के बावजूद उसे वह आदर नहीं मिलता जो एक 5. \_\_\_\_\_ को मिलना चाहिए।

**SubQuestion No : 18**

Q.18 रिक्त स्थान 3 की पूर्ति के लिए सबसे उपयुक्त विकल्प का चयन कीजिए।

- Ans  1. अनावश्यक  
 2. स्वाभाविक  
 3. अकथनीय  
 4. ज़रूरी

Question ID : 264330110977

Status : Not Answered

Chosen Option : --

**Comprehension:**

निम्नलिखित गद्यांश में कुछ शब्दों को हटा दिया गया है। दिए गए विकल्पों की सहायता से रिक्त स्थानों की पूर्ति कीजिए। प्रत्येक संख्या के लिए सबसे उपयुक्त विकल्प का चयन कीजिए।  
मानव जब जोर लगाता है, पत्थर पानी बन जाता है। मनुष्य के पास इतनी 1. \_\_\_\_\_ है कि वह सभी कुछ कर सकता है। इसी भरोसे पर वह अपना और अपने 2. \_\_\_\_\_ का लालन-पालन करता है। समाज में छोटे-बड़े, निर्धन-धनी का होना 3. \_\_\_\_\_ है। समाज में धनवान का आदर होता है जबकि मज़दूर को 4. \_\_\_\_\_ समझा जाता है। कड़ी मेहनत के बावजूद उसे वह आदर नहीं मिलता जो एक 5. \_\_\_\_\_ को मिलना चाहिए।

**SubQuestion No : 19**

Q.19 रिक्त स्थान 4 की पूर्ति के लिए सबसे उपयुक्त विकल्प का चयन कीजिए।

- Ans  1. सम्मान  
 2. प्रथम  
 3. सही  
 4. तुच्छ

Question ID : 264330110978

Status : Not Answered

Chosen Option : --

**Comprehension:**

निम्नलिखित गद्यांश में कुछ शब्दों को हटा दिया गया है। दिए गए विकल्पों की सहायता से रिक्त स्थानों की पूर्ति कीजिए। प्रत्येक संख्या के लिए सबसे उपयुक्त विकल्प का चयन कीजिए।  
मानव जब जोर लगाता है, पत्थर पानी बन जाता है। मनुष्य के पास इतनी 1. \_\_\_\_\_ है कि वह सभी कुछ कर सकता है। इसी भरोसे पर वह अपना और अपने 2. \_\_\_\_\_ का लालन-पालन करता है। समाज में छोटे-बड़े, निर्धन-धनी का होना 3. \_\_\_\_\_ है। समाज में धनवान का आदर होता है जबकि मज़दूर को 4. \_\_\_\_\_ समझा जाता है। कड़ी मेहनत के बावजूद उसे वह आदर नहीं मिलता जो एक 5. \_\_\_\_\_ को मिलना चाहिए।

**SubQuestion No : 20**

Q.20 रिक्त स्थान 5 की पूर्ति के लिए सबसे उपयुक्त विकल्प का चयन कीजिए।

- Ans  1. बच्चों  
 2. मनुष्य  
 3. परिवार  
 4. पड़ोसी

Question ID : 264330110979

Status : Not Answered

Chosen Option : --

KD Job Updates

# Constable GD in CAPFs SSF Rifleman GD in Assam Rifles and Sepoy in NCB Examination 2022

Roll Number	KD Job Updates
Candidate Name	KD Job Updates
Venue Name	iON Digital Zone iDZ5 Patliputra
Exam Date	01/02/2023
Exam Time	5:15 PM - 6:15 PM
Subject	Constable GD Examination 2022

Section : Part-A-General Intelligence and Reasoning

Q.1 Select the correct mirror image of the given figure when the mirror is placed at MN as shown below.



Ans

- ✓ 1. YhEaRchY
- ✗ 2. YhEaRchy
- ✗ 3. YhEaRCHY
- ✗ 4. YhEaRChy

Question ID : 26433085560

Status : Answered

Chosen Option : 1

Q.2 In a certain code language, 'heart games' is coded as 'alarm coffee', 'wrap' is coded as 'bottle', and 'wrap games' is coded as 'bottle coffee'. What is the code word for 'heart'?

Ans

- ✓ 1. alarm
- ✗ 2. wrap
- ✗ 3. bottle
- ✗ 4. coffee

Question ID : 26433079365

Status : Answered

Chosen Option : 1

Q.3 Select the option that is related to the fifth number in the same way as the second number is related to the first number and the fourth number is related to the third number.

15 : 4 :: 21 : 6 :: 42 : ?

- Ans
- 1. 8
  - 2. 12
  - 3. 13
  - 4. 11

Question ID : 26433069416  
Status : Answered  
Chosen Option : 3

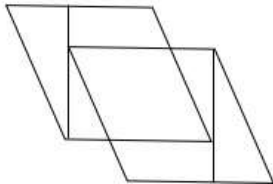
Q.4 Select the option that is related to the third word in the same way as the second word is related to the first word. (The words must be considered as meaningful English words and must not be related to each other based on the number of letters/number of consonants/vowels in the word.)

Argentina : Peso :: Japan : ?

- Ans
- 1. Yen
  - 2. Rial
  - 3. Krona
  - 4. Guilder

Question ID : 26433067369  
Status : Answered  
Chosen Option : 1

Q.5 Select the option figure which is embedded in the given figure. (Rotation is NOT allowed)



- Ans
- 1.
  - 2.
  - 3.
  - 4.

Question ID : 26433069334  
Status : Answered  
Chosen Option : 4

Q.6 Which letter-cluster will replace the question mark (?) to complete the given series?  
CJEZ, ?, WFYV, TDVT, QBSR

- Ans
- 1. AGCX
  - 2. ZHBX
  - 3. BGAW
  - 4. BHAY

Question ID : 26433068039  
Status : Answered  
Chosen Option : 2

Q.7 Which of the numbers(not digits) should be interchanged in the below equation to make it mathematically correct?  
 $108 \div 9 \times 16 + 12 - 27 = 126$

- Ans
- 1. 12 and 27
  - 2. 9 and 12
  - 3. 16 and 9
  - 4. 27 and 9

Question ID : 264330117492  
Status : Answered  
Chosen Option : 2

Q.8 Which two signs should be interchanged to make the below equation mathematically correct?  
 $44 - 96 \times 4 \div 3 + 58 = 30$

- Ans
- 1. - and  $\div$
  - 2.  $\times$  and +
  - 3. + and -
  - 4.  $\div$  and  $\times$

Question ID : 264330114195  
Status : Answered  
Chosen Option : 4

Q.9 In a certain code language, 'ARGUE' is written as '22620926' and 'BEACH' is written as '1924262225'. How will 'ACCEL' be written in that language?

- Ans
- 1. 1522226426
  - 2. 1524242426
  - 3. 1252242426
  - 4. 1522242426

Question ID : 26433069553  
Status : Answered  
Chosen Option : 4

Q.10 Six friends M, N, O, P, Q and R are sitting in a straight row facing north. Exactly three people are sitting to the left of N. O is sitting immediately to the right of N. M and P are immediate neighbours of Q such that M is the fourth to the left of O. Where is R seated?

- Ans
- 1. Second to the left of N
  - 2. Third to the right of P
  - 3. Immediate right of M
  - 4. Third to the left of O

Question ID : 26433074526  
Status : Answered  
Chosen Option : 2

Q.11 Which letter-cluster will replace the question mark (?) to complete the given series?  
ACEG, BDFH, ?, DFHJ, EGIK

- Ans
- 1. CDEF
  - 2. CEGI
  - 3. CFHJ
  - 4. CEHI

Question ID : 26433067710  
Status : Answered  
Chosen Option : 2

Q.12 Which option represents the correct order of the given words as they would appear in the English dictionary?

- 1 power
- 2 pour
- 3 powder
- 4 pointed
- 5 polite

- Ans
- 1. 4,2,5,3,1
  - 2. 4,5,2,3,1
  - 3. 4,3,5,2,1
  - 4. 4,2,3,1,5

Question ID : 26433069283  
Status : Answered  
Chosen Option : 2

Q.13 Which figure should replace the question mark (?) if the series were to be continued?

C	B	S	Z	4	B	S	C	
	4		C		Z		4	?
S	Z	4	B	S	C	Z	B	

Ans

✗ 1.

4	S
	C
B	Z

✗ 2.

Z	B
	S
4	C

✓ 3.

Z	B
	C
S	4

✗ 4.

C	S
	B
4	Z

Question ID : 26433076635

Status : Answered

Chosen Option : 2

Q.14 Select the option that is related to the third word in the same way as the second word is related to the first word. (The words must be considered as meaningful English words and must not be related to each other based on the number of letters/number of consonants/vowels in the word.)  
Goldsmith : Ornaments :: Sculptor : ?

- Ans
- ✗ 1. Sand
  - ✗ 2. Museum
  - ✗ 3. Stone
  - ✓ 4. Bust

Question ID : 26433069582

Status : Answered

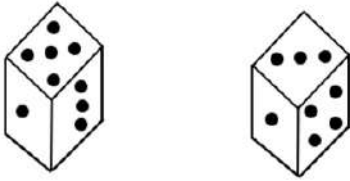
Chosen Option : 3

Q.15 Six people J, K, L, M, N and O are sitting around a circular table facing the centre. J sits second to the right of N. O is an immediate neighbour of M and J. K sits second to the left of L. Who sits to the immediate right of O?

- Ans
- 1. K
  - 2. N
  - 3. M
  - 4. L

Question ID : 26433069479  
Status : Answered  
Chosen Option : 3

Q.16 Two different positions of the same dice are shown having numbers 1 to 6 represented as dots. Find the number on the face opposite the face showing '5'.



- Ans
- 1. 4
  - 2. 6
  - 3. 2
  - 4. 1

Question ID : 26433085524  
Status : Answered  
Chosen Option : 1

Q.17 Three statements are given followed by two conclusions. Assuming the statements to be true, even if they seem to be at variance with commonly known facts, decide which of the conclusions logically follow(s) from the statements.

Statements:

All tables are woods.

All woods are paints.

No paint is a steel.

Conclusions:

1. All steels can be woods.

2. Some paints are steels.

- Ans
- 1. Both conclusions 1 and 2 follow.
  - 2. Neither conclusion 1 nor 2 follows.
  - 3. Only conclusion 1 follows.
  - 4. Only conclusion 2 follows.

Question ID : 26433089422  
Status : Answered  
Chosen Option : 2



Q.18 Which number will replace the question mark (?) in the following series?  
1, 5, ?, 25, 41, 61

- Ans
- 1. 10
  - 2. 13
  - 3. 8
  - 4. 12

Question ID : 26433067842  
Status : Answered  
Chosen Option : 2

Q.19 Which of the following numbers will replace the question mark (?) in the given series?  
16, 23, 34, 47, 64, ?, 106

- Ans
- 1. 83
  - 2. 90
  - 3. 98
  - 4. 86

Question ID : 26433070216  
Status : Answered  
Chosen Option : 1

Q.20 'A + B' means 'B is the father of A'  
'A - B' means 'B is the mother of A'  
'A @ B' means 'B is the brother of A'  
'A \* B' means 'B is the son of A'  
If A \* B + C @ D - E, then how is E related to A?

- Ans
- 1. Sister
  - 2. Mother
  - 3. Mother-in-law
  - 4. Brother's wife

Question ID : 26433068532  
Status : Answered  
Chosen Option : 3

Section : Part-B-General Knowledge and General awareness

Q.1 An instrument that can detect the presence of a current in a circuit is known as \_\_\_\_\_.

- Ans
- 1. odometer
  - 2. speedometer
  - 3. hygrometer
  - 4. ammeter

Question ID : 26433089647  
Status : Answered  
Chosen Option : 4

**Q.2 Who has sworn in as 50th Chief Justice of India?**

Ans  1. Uday Umesh Lalit

2. Dhananjaya Yashwant Chandrachud

3. Sharad Arvind Bobde

4. Nuthalapati Venkata Ramana

Question ID : 264330114982  
Status : Answered  
Chosen Option : 2

**Q.3 Radha Sridhar won the Sangeet Natak Akademi Award in 2018 in \_\_\_\_\_.**

Ans  1. Kathak

2. Odissi

3. Bharatnatyam

4. Manipuri

Question ID : 264330115876  
Status : Not Answered  
Chosen Option : --

**Q.4 Powers, authority and responsibilities of Municipalities are dealt under which schedule?**

Ans  1. 11th

2. 13th

3. 10th

4. 12th

Question ID : 264330115614  
Status : Answered  
Chosen Option : 1

**Q.5 Which political leader quit Indian National Congress following differences with party leadership in May 2022?**

Ans  1. Sonia Gandhi

2. Mallikarjun Kharge

3. Kapil Sibal

4. Shashi Tharoor

Question ID : 264330114914  
Status : Answered  
Chosen Option : 3

Q.6 How many types of Bihu festival are celebrated in Assam?

Ans  1. 6

2. 3

3. 5

4. 2

Question ID : 264330106203

Status : Answered

Chosen Option : 2

Q.7 The concepts of Dhamma was popularized by which of the following Mauryan kings?

Ans  1. Ashoka

2. Bindusara

3. Dasaratha

4. Chandragupta

Question ID : 264330115452

Status : Answered

Chosen Option : 1

Q.8 The Dronacharya Sports Award is given to the\_\_\_\_\_.

Ans  1. Captain of the Team

2. Best player of The team

3. President of the team

4. Coach of the Team

Question ID : 264330116290

Status : Answered

Chosen Option : 4

Q.9 Planning Commission was established under \_\_\_\_\_ on March 15, 1950

Ans  1. APJ Abdul Kalam

2. Indira Gandhi

3. Subhash Chandra Bose

4. Jawahar Lal Nehru

Question ID : 264330115380

Status : Answered

Chosen Option : 4

Q.10 Availability of \_\_\_\_\_ during winter months due to the western temperate cyclones helps in the success of rabi crops.

Ans  1. frost

2. precipitation

3. fog

4. wind

Question ID : 264330115526

Status : Answered

Chosen Option : 1

Q.11 On September 1948 the Indian army intervened and took control of which princely state?

- Ans
- 1. Assam
  - 2. Uttar Pradesh
  - 3. Hyderabad
  - 4. Tripura

Question ID : 264330115688  
Status : Answered  
Chosen Option : 3

Q.12 Which Indian organisation is responsible for collecting data on poverty in the country?

- Ans
- 1. NITI Aayog
  - 2. National Organisation for Social Empowerment
  - 3. National Sample Survey Organisation
  - 4. Office of Registrar General and Census Commissioner of India

Question ID : 264330116076  
Status : Answered  
Chosen Option : 1

Q.13 The council of ministers is collectively responsible to the \_\_\_\_\_.

- Ans
- 1. people
  - 2. lok sabha
  - 3. chief minister
  - 4. governor

Question ID : 26433086672  
Status : Answered  
Chosen Option : 3

Q.14 The classical text, Hasthalakshana Deepika, is associated with which Indian classical dance form?

- Ans
- 1. Sattriya
  - 2. Kuchipudi
  - 3. Bharatanatyam
  - 4. Kathakali

Question ID : 26433069902  
Status : Not Answered  
Chosen Option : --

**Q.15** Government goods and services that aren't sold directly to the consumers, for example defence goods, roads are categorised under:

- Ans**
- 1. private goods
  - 2. international goods
  - 3. public goods
  - 4. expensive goods

Question ID : 264330115279  
Status : Answered  
Chosen Option : 3

**Q.16** What is an area of dry land that lies on the leeward side of a mountain called?

- Ans**
- 1. Rainshadow area
  - 2. Windward Side
  - 3. Leeward Side
  - 4. Mountainous areas

Question ID : 264330115981  
Status : Not Answered  
Chosen Option : --

**Q.17** The national level cricket championship, Ranji Trophy, began in \_\_\_\_\_.

- Ans**
- 1. 1934-1935
  - 2. 1953-1954
  - 3. 1950-1951
  - 4. 1944-1945

Question ID : 26433089922  
Status : Not Answered  
Chosen Option : --

**Q.18** The National Food and Security Act of 2013 (NFSA2013) provides subsidised food grains to \_\_\_\_\_ of India's rural population.

- Ans**
- 1. 95%
  - 2. 75%
  - 3. 65%
  - 4. 85%

Question ID : 264330116156  
Status : Answered  
Chosen Option : 2

**Q.19 Select the second step of decomposition.**

- Ans  1. leaching  
 2. fragmentation  
 3. catabolism  
 4. humification

Question ID : 264330115252  
Status : Not Answered  
Chosen Option : --

**Q.20 Any person in-charge of or employed in a child care institution, who subjects a child to corporal punishment shall be liable under\_\_\_\_\_.**

- Ans  1. Indian Advocate's Act  
 2. Hindu succession act  
 3. Juvenile Justice Act  
 4. Hindu adoption act

Question ID : 264330116222  
Status : Answered  
Chosen Option : 4

Section : Part-C-Elementary Mathematics

**Q.1 The LCM of 192 and 480 is 60 more than the 100 times of X. What is the value of X?**

- Ans  1. 6  
 2. 12  
 3. 9  
 4. 18

Question ID : 264330116631  
Status : Answered  
Chosen Option : 3

**Q.2 Divide Rs.500 among A, B, C and D so that A and B together get thrice as much as C and D together, B gets 4 times what C gets and C gets 1.5 times as much as D. The value of B's share is:**

- Ans  1. Rs.250  
 2. Rs.300  
 3. Rs.125  
 4. Rs.75

Question ID : 26433076038  
Status : Answered  
Chosen Option : 2

Q.3 A's speed is 30% more than that of B. If A and B run a race on a 117 m length race, what part of the length of the race should A give B as a head start, so that the race ends in a dead heat?

- Ans
- 1. 90 m
  - 2. 117 m
  - 3. 27 m
  - 4. 36 m

Question ID : 26433080051  
Status : Answered  
Chosen Option : 3

Q.4 A single discount equivalent to two successive discounts 15% and 25% is:

- Ans
- 1.  $21\frac{1}{4}\%$
  - 2.  $26\frac{3}{4}\%$
  - 3.  $38\frac{1}{4}\%$
  - 4.  $36\frac{1}{4}\%$

Question ID : 26433061070  
Status : Answered  
Chosen Option : 4

Q.5 A certain sum of money fetches simple interest of Rs.4,016.25 at the rate of 7% per annum in 5 years. What is the sum?

- Ans
- 1. Rs.10,475
  - 2. Rs.9,475
  - 3. Rs.11,400
  - 4. Rs.11,475

Question ID : 26433075237  
Status : Answered  
Chosen Option : 4

Q.6 A person drives for 320 kms in 8 hours, cycles for 40 kms in 5 hours and then walks for 40 kms in 7 hours. Find the average speed of the driver.

- Ans
- 1. 20 kmph
  - 2. 18 kmph
  - 3. 22 kmph
  - 4. 22.22 kmph

Question ID : 264330116686  
Status : Answered  
Chosen Option : 1

Q.7

Find the remainder of  $\frac{3126^{20} 21^{22} 23^{23}}{5}$ .

- Ans
- 1. 4
  - 2. 0
  - 3. 1
  - 4. 2

Question ID : 26433080385  
Status : Answered  
Chosen Option : 3

Q.8 Two years ago, the population of a town was 66000. The population increased by 5% in the first year and decreased by 5% in the second year. Find the present population of the town.

- Ans
- 1. 68553
  - 2. 63855
  - 3. 65835
  - 4. 65583

Question ID : 26433075196  
Status : Answered  
Chosen Option : 3

Q.9 The radius of the base of a conical vessel is 5 cm and its height is 24 cm. The vessel is full of water. This water is poured into a cylindrical vessel having the base radius 10 cm. The depth of the water in the cylindrical vessel is:

- Ans
- 1. 1 cm
  - 2. 4 cm
  - 3. 2 cm
  - 4. 3 cm

Question ID : 26433075213  
Status : Answered  
Chosen Option : 3

Q.10 Three partners A, B and C started a business and decided to share the profit in the ratio 2 : 3 : 5, respectively. If the share of B is Rs.7,50,000, then calculate the total profit.

- Ans
- 1. Rs.24,00,000
  - 2. Rs.20,00,000
  - 3. Rs.25,00,000
  - 4. Rs.27,00,000

Question ID : 26433075976  
Status : Answered  
Chosen Option : 3



Q.11 P can do as much work as Q and R together can do. P and Q can together do a piece of work in 8 hours and 24 minutes and R can do it in 42 hours. Find the time (in hours) that Q needs to do the work alone.

- Ans
- 1. 22 hours
  - 2. 24 hours
  - 3. 21 hours
  - 4. 20 hours

Question ID : 264330116906  
Status : Answered  
Chosen Option : 3

Q.12 Salary of a person is first decreased by 40 percent and then increased by 40 percent. What will be the percentage decrease in the salary ?

- Ans
- 1. 18 percent
  - 2. 12 percent
  - 3. 16 percent
  - 4. 15 percent

Question ID : 26433079854  
Status : Answered  
Chosen Option : 3

Q.13 Find the total surface area of a cylinder whose height is 8.5 mm and the base diameter is 10 mm.

- Ans
- 1.  $135\pi \text{ mm}^2$
  - 2.  $85.5\pi \text{ mm}^2$
  - 3.  $67.5\pi \text{ mm}^2$
  - 4.  $120\pi \text{ mm}^2$

Question ID : 26433080249  
Status : Answered  
Chosen Option : 1

Q.14 Excluding the stoppages, the speed of a truck is 90 km/h and including the stoppages, the speed of the truck is 36 km/h in a journey. For how many minutes does the truck stop per hour?

- Ans
- 1. 54 minutes
  - 2. 36 minutes
  - 3. 40 minutes
  - 4. 42 minutes

Question ID : 26433074939  
Status : Answered  
Chosen Option : 2

Q.15 A dealer offers 20% discount on all dolls. He offers a further discount of 5% on the reduced price to those customers who pay in cash. How much will a customer pay in cash for a doll worth Rs.1,800?

- Ans
- 1. Rs.800
  - 2. Rs.1,368
  - 3. Rs.1,225
  - 4. Rs.1,532

Question ID : 26433083041  
Status : Answered  
Chosen Option : 2

Q.16 In a storm 243 trees were left standing out of 300 trees in a garden. What is the percentage decrease in number of trees?

- Ans
- 1. 19 percent
  - 2. 22 percent
  - 3. 24 percent
  - 4. 21 percent

Question ID : 264330116826  
Status : Answered  
Chosen Option : 1

Q.17 A shopkeeper sells his goods at 10 percent loss on cost price but uses 30 percent less weight. What is his profit?

- Ans
- 1.  $28\frac{4}{7}$  percent
  - 2.  $21\frac{4}{7}$  percent
  - 3.  $25\frac{5}{7}$  percent
  - 4.  $20\frac{3}{7}$  percent

Question ID : 26433079864  
Status : Answered  
Chosen Option : 1

Q.18 If 6 men or 8 women can reap a field in 21.5 days. How long will 14 men and 10 women take to reap it?

- Ans
- 1. 9 days
  - 2. 8 days
  - 3. 6 days
  - 4. 12 days

Question ID : 26433076209  
Status : Answered  
Chosen Option : 3

Q.19 The average of the cube of the first 4 natural numbers is:

Ans  1. 25

2. 100

3. 75

4. 50

Question ID : 26433075718

Status : Answered

Chosen Option : 1

Q.20 Rita buys a toy car for Rs.12,000 and sells it for Rs.14,500. What is her gain percent?  
(rounded off to two digits after decimal)

Ans  1. 20.83%

2. 18%

3. 22%

4. 14.50%

Question ID : 26433074920

Status : Answered

Chosen Option : 1

Section : Part-D-English

Q.1 The sentence given below has one misspelt word. Spot the INCORRECTLY spelt word and select its correct spelling.

Too much bureacracy suppresses creativity.

Ans  1. Bureaucracy

2. Burocracy

3. Bureaukracy

4. Burreaukracy

Question ID : 26433073555

Status : Answered

Chosen Option : 1

Q.2 Select the most appropriate option that can substitute the underlined segment in the given sentence.

The mob broke up the norms of the country.

Ans  1. violated

2. invade

3. disturb

4. damaged

Question ID : 26433086464

Status : Answered

Chosen Option : 1

Q.3 Select the most appropriate option to fill in the blank.

The skeleton of an unknown person has been hanging on the tree \_\_\_\_\_ last Wednesday.

- Ans  1. through  
 2. since  
 3. about  
 4. for

Question ID : 26433074364  
Status : Answered  
Chosen Option : 2

Q.4 Select the most appropriate synonym of the given word.

Hesitation

- Ans  1. Readiness  
 2. Reluctance  
 3. Prudence  
 4. Creativity

Question ID : 26433073465  
Status : Answered  
Chosen Option : 2

Q.5 Select the correct word for the blanks in the given sentence.

There is a provision of \_\_\_\_\_ delivery in every courier service whereas a child can \_\_\_\_\_ his feelings at the age of 2 years or so.

- Ans  1. normal  
 2. fast  
 3. slow  
 4. express

Question ID : 26433060536  
Status : Answered  
Chosen Option : 4

Q.6 Select the most appropriate meaning of the underlined idiom in the given sentence.

The second wave of the pandemic left everyone in the doldrums.

- Ans  1. In confusion  
 2. In deep sympathy  
 3. In need of help  
 4. In low spirits and despair

Question ID : 26433073759  
Status : Answered  
Chosen Option : 4

**Q.7** Select the most appropriate word to complete the meaning of the sentence.

The new owners of the newspaper had changed the \_\_\_\_\_ completely.

- Ans  1. layout  
 2. outlay  
 3. outlook  
 4. outlet

Question ID : 26433088875  
Status : Answered  
Chosen Option : 4

**Q.8** Select the most appropriate ANTONYM of the given word.

Dream

- Ans  1. Delusion  
 2. Fancy  
 3. Imagination  
 4. Reality

Question ID : 26433072208  
Status : Answered  
Chosen Option : 4

**Q.9** Select the most appropriate synonym of the given word.

Colossal

- Ans  1. Immense  
 2. Joyous  
 3. Entertaining  
 4. Fantastic

Question ID : 26433088997  
Status : Answered  
Chosen Option : 1

**Q.10** Select the most appropriate ANTONYM of the underlined word in the following sentence.

His ancestors are native to this place.

- Ans  1. Innate  
 2. Community  
 3. Enemy  
 4. Foreign

Question ID : 26433072240  
Status : Answered  
Chosen Option : 4

Q.11 Select the most appropriate meaning of the given idiom.

Where the shoe pinches

- Ans
- 1. Tight fitting shoes
  - 2. Expensive shoes
  - 3. Where the comfort is more
  - 4. Where the difficulty lies

Question ID : 26433072221  
Status : Answered  
Chosen Option : 4

Q.12 Select the most appropriate option that can substitute the underlined segment in the given sentence.

She couldn't get over with Thomas due to his addiction to alcohol.

- Ans
- 1. get at with Thomas due to
  - 2. get along with Thomas due to
  - 3. get off with Thomas due to
  - 4. get rid with Thomas due to

Question ID : 264330100989  
Status : Answered  
Chosen Option : 2

Q.13 The following sentence has been divided into parts. One of them may contain an error. Select the part that contains the error from the given options. If you don't find any error, mark 'No error' as your answer.

For the last three years, / Sunita had been running / private hostels near this university.

- Ans
- 1. Sunita had been running
  - 2. No error
  - 3. private hostels near this university
  - 4. For the last three years

Question ID : 26433073763  
Status : Answered  
Chosen Option : 3

Q.14 Select the INCORRECTLY spelt word.

- Ans
- 1. Powerful
  - 2. Willfull
  - 3. Grateful
  - 4. Doubtful

Question ID : 26433072458  
Status : Answered  
Chosen Option : 2

**Q.15 Identify from the following options the word which is OPPOSITE in meaning to the given word.**

**Opaque**

- Ans  1. Intangible  
 2. Shadowy  
 3. Transparent  
 4. Reflector

Question ID : 26433088816

Status : Answered

Chosen Option : 3

**Comprehension:**

In the following passage, some words have been deleted. Read the passage carefully and select the most appropriate option to fill in each blank.

The life (1) \_\_\_\_\_ of a banana is a colourful one; it starts with a deep green, changes to a delicious yellow and ends at an unappetizing brown. Bananas, like most fruits, produce and (2) \_\_\_\_\_ with an airborne hormone called ethylene. This hormone helps to signal the ripening process. An unripe fruit is hard and acidic. It is likely to possess a greenish (3) \_\_\_\_\_ due to the presence of chlorophyll. When a fruit comes into contact (4) \_\_\_\_\_ ethylene, the acids in the fruit start to break down, it becomes softer and the green chlorophyll is (5) \_\_\_\_\_ and replaced, in the case of bananas, with a yellow hue.

**SubQuestion No : 16**

**Q.16 Select the most appropriate option to fill in blank number 1.**

- Ans  1. span  
 2. story  
 3. cycle  
 4. time

Question ID : 26433072056

Status : Answered

Chosen Option : 3

**Comprehension:**

In the following passage, some words have been deleted. Read the passage carefully and select the most appropriate option to fill in each blank.

The life (1) \_\_\_\_\_ of a banana is a colourful one; it starts with a deep green, changes to a delicious yellow and ends at an unappetizing brown. Bananas, like most fruits, produce and (2) \_\_\_\_\_ with an airborne hormone called ethylene. This hormone helps to signal the ripening process. An unripe fruit is hard and acidic. It is likely to possess a greenish (3) \_\_\_\_\_ due to the presence of chlorophyll. When a fruit comes into contact (4) \_\_\_\_\_ ethylene, the acids in the fruit start to break down, it becomes softer and the green chlorophyll is (5) \_\_\_\_\_ and replaced, in the case of bananas, with a yellow hue.

**SubQuestion No : 17**

**Q.17 Select the most appropriate option to fill in blank number 2.**

- Ans  1. differ  
 2. correspond  
 3. tamper  
 4. react

Question ID : 26433072057

Status : Answered

Chosen Option : 4

**Comprehension:**

In the following passage, some words have been deleted. Read the passage carefully and select the most appropriate option to fill in each blank.

The life (1) \_\_\_\_\_ of a banana is a colourful one; it starts with a deep green, changes to a delicious yellow and ends at an unappetizing brown. Bananas, like most fruits, produce and (2) \_\_\_\_\_ with an airborne hormone called ethylene. This hormone helps to signal the ripening process. An unripe fruit is hard and acidic. It is likely to possess a greenish (3) \_\_\_\_\_ due to the presence of chlorophyll. When a fruit comes into contact (4) \_\_\_\_\_ ethylene, the acids in the fruit start to break down, it becomes softer and the green chlorophyll is (5) \_\_\_\_\_ and replaced, in the case of bananas, with a yellow hue.

**SubQuestion No : 18**

**Q.18** Select the most appropriate option to fill in blank number 3.

- Ans
- 1. seed
  - 2. flesh
  - 3. fibre
  - 4. hue

Question ID : 26433072058

Status : Answered

Chosen Option : 4

**Comprehension:**

In the following passage, some words have been deleted. Read the passage carefully and select the most appropriate option to fill in each blank.

The life (1) \_\_\_\_\_ of a banana is a colourful one; it starts with a deep green, changes to a delicious yellow and ends at an unappetizing brown. Bananas, like most fruits, produce and (2) \_\_\_\_\_ with an airborne hormone called ethylene. This hormone helps to signal the ripening process. An unripe fruit is hard and acidic. It is likely to possess a greenish (3) \_\_\_\_\_ due to the presence of chlorophyll. When a fruit comes into contact (4) \_\_\_\_\_ ethylene, the acids in the fruit start to break down, it becomes softer and the green chlorophyll is (5) \_\_\_\_\_ and replaced, in the case of bananas, with a yellow hue.

**SubQuestion No : 19**

**Q.19** Select the most appropriate option to fill in blank number 4.

- Ans
- 1. over
  - 2. from
  - 3. by
  - 4. with

Question ID : 26433072059

Status : Answered

Chosen Option : 4



**Comprehension:**

In the following passage, some words have been deleted. Read the passage carefully and select the most appropriate option to fill in each blank.

The life (1) \_\_\_\_\_ of a banana is a colourful one; it starts with a deep green, changes to a delicious yellow and ends at an unappetizing brown. Bananas, like most fruits, produce and (2) \_\_\_\_\_ with an airborne hormone called ethylene. This hormone helps to signal the ripening process. An unripe fruit is hard and acidic. It is likely to possess a greenish (3) \_\_\_\_\_ due to the presence of chlorophyll. When a fruit comes into contact (4) \_\_\_\_\_ ethylene, the acids in the fruit start to break down, it becomes softer and the green chlorophyll is (5) \_\_\_\_\_ and replaced, in the case of bananas, with a yellow hue.

**SubQuestion No : 20****Q.20 Select the most appropriate option to fill in blank number 5.**

- Ans  1. broken up  
 2. brought to  
 3. fallen into  
 4. turned down

Question ID : 26433072060

Status : Answered

Chosen Option : 3

Section : Part-D-Hindi

Q.1 आधुनिक लोग गोबर को कम महत्व देते हैं।  
उपरोक्त वाक्य में 'गोबर' के बदले आप कौन सा पद प्रयोग करेंगे?

- Ans  1. अक्षत  
 2. तुलसी  
 3. कुसुम  
 4. गोमय

Question ID : 26433062689

Status : Not Answered

Chosen Option : --

Q.2 "सुजय राघव को पुस्तक दिया।"  
उपरोक्त वाक्य में कारक सम्बन्धी त्रुटि पहचानकर निम्नलिखित में से शुद्ध वाक्य का चयन कीजिए।

- Ans  1. सुजय ने राघव का पुस्तक दिया।  
 2. सुजय ने राघव को पुस्तक दी।  
 3. सुजय राघव की पुस्तक दिया।  
 4. सुजय राघव की पुस्तक दी।

Question ID : 26433066964

Status : Not Answered

Chosen Option : --

Q.3 निम्नलिखित वाक्यांश के लिए एक सार्थक शब्द क्या होगा?  
जो इच्छा के अधीन है

- Ans
- 1. आंशिक
  - 2. अमानत
  - 3. आशातीत
  - 4. ऐच्छिक

Question ID : 26433069987  
Status : Not Answered  
Chosen Option : --

Q.4 निम्नलिखित वाक्य में रेखांकित एकार्थी शब्द युग्म का उपयुक्त अर्थ बताएं।  
हमारे गाँव में पीपल के 'शप्त-सप्त' पेड़ हैं।

- Ans
- 1. शापित-सात
  - 2. शुभ-लाभ
  - 3. नापित-शापित
  - 4. दो बार सात-सात

Question ID : 26433091331  
Status : Not Answered  
Chosen Option : --

Q.5 निम्नलिखित शब्दों में से कौन सा शब्द अनेकार्थी शब्द है?

- Ans
- 1. बौरा
  - 2. मोती
  - 3. मुद्रा
  - 4. मेंढक

Question ID : 26433091317  
Status : Not Answered  
Chosen Option : --

Q.6 निम्नलिखित वाक्य में रेखांकित शब्द के विलोम शब्द का प्रयोग करके रिक्तस्थान की पूर्ति कीजिए-  
\_\_\_\_\_ बादल से वर्षा की सम्भावना कम ही होती है, स्याह बादल वर्षा के परिचायक हैं।

- Ans
- 1. श्याम
  - 2. सफेद
  - 3. अँधेरा
  - 4. काला

Question ID : 26433091346  
Status : Not Answered  
Chosen Option : --

Q.7 "जयेश ने खाना खाया।"  
उपरोक्त वाक्य का अपूर्ण वर्तमानकाल में रूपांतरण क्या होगा?

- Ans  1. जयेश खाना खा रहा है।  
 2. जयेश ने खाना खाया होगा।  
 3. जयेश ने खाना खा रहा होगा।  
 4. शायद जयेश खाना खा रहा हो।

Question ID : 26433066977  
Status : Not Answered  
Chosen Option : --

Q.8 जिस स्त्री के पुत्र और पति न हो' वाक्यांश के लिए इनमें से सही शब्द क्या है?

- Ans  1. सधवा  
 2. विधवा  
 3. कबीरा  
 4. अवीरा

Question ID : 26433092245  
Status : Not Answered  
Chosen Option : --

Q.9 कौन से विकल्प में क्रमशः अकर्मक-सकर्मक क्रिया का सही युग्म दिया गया है।

- Ans  1. खाना, लिखना  
 2. कहना, सोना  
 3. गिरना, देना  
 4. बैठना, लेटना

Question ID : 26433063046  
Status : Not Answered  
Chosen Option : --

Q.10 निम्नलिखित वाक्य के किस खंड में अशुद्धि है?  
महादेवी वर्मा बड़ी जीवंत कवयित्री थीं।

- Ans  1. जीवंत  
 2. बड़ी  
 3. थीं  
 4. कवयित्री

Question ID : 26433066750  
Status : Not Answered  
Chosen Option : --

Q.11 निम्नलिखित में से शुद्ध वाक्य है-

- Ans  1. मोहन श्याम की अपेक्षा सिष्ट है।  
 2. मोहन श्याम की अपेक्षा शिष्ट है।  
 3. मोहन श्याम की अपेक्ष शिष्ट है।  
 4. मोहन श्याम की अपेक्षा सिस्टर है।

Question ID : 26433066840  
Status : Not Answered  
Chosen Option : --

Q.12 निम्न वाक्य में रेखांकित अंश के लिए उचित मुहावरा दिए गए विकल्पों में से चुनिए।  
बेटा अच्छे अंकों से पास हो गया, माँ के मन को शांति मिली।

- Ans  1. कलेजा ठंडा होना  
 2. काँटा दूर होना  
 3. कलम तोड़ना  
 4. कली खिलना

Question ID : 26433062302  
Status : Not Answered  
Chosen Option : --

Q.13 'सुंदरी' के लिए पर्याय शब्द निम्न में से क्या होगा?

- Ans  1. भामा  
 2. सुदर्शना  
 3. वनिता  
 4. रानी

Question ID : 26433069943  
Status : Not Answered  
Chosen Option : --

Q.14 'बरसात के चार महीने' वाक्यांश के लिए सार्थक शब्द है-

- Ans  1. चारमासा  
 2. चौमासा  
 3. बारहमासा  
 4. बरसात

Question ID : 26433062227  
Status : Not Answered  
Chosen Option : --

Q.15 रीता ने समीर के स्वभाव के बारे में जो बात कही है, वह \_\_\_\_\_ आने सही है।  
उपरोक्त वाक्य में रिक्त स्थान की पूर्ति उचित मुहावरे द्वारा कीजिए।

- Ans
- 1. चार
  - 2. आठ
  - 3. बारह
  - 4. सोलह

Question ID : 26433062616

Status : Not Answered

Chosen Option : --

**Comprehension:**

निम्नलिखित गद्यांश में कुछ शब्दों को हटा दिया गया है। दिए गए विकल्पों की सहायता से रिक्त स्थानों की पूर्ति कीजिए। प्रत्येक संख्या के लिए सबसे उपयुक्त विकल्प का चयन कीजिए।  
भारत कृषि प्रधान 1. \_\_\_\_\_ है। यहाँ की अधिकांश जनता 2. \_\_\_\_\_ करती है। कृषि ही उसकी जीविका का साधन है और यही व्यवसाय है। कृषक आज भी 3. \_\_\_\_\_ में रहता है। यद्यपि कुछ दशकों से यह दिखाई दे रहा है कि भारत का किसान अपना व्यवसाय छोड़कर 4. \_\_\_\_\_ की ओर भाग रहा है। फिर भी नगर और गाँवों के बीच की भूमि पर आज भी 5. \_\_\_\_\_ होती है।

**SubQuestion No : 16**

Q.16 रिक्त स्थान 1 की पूर्ति के लिए सबसे उपयुक्त विकल्प का चयन कीजिए।

- Ans
- 1. देश
  - 2. क्षेत्र
  - 3. राज्य
  - 4. नगर

Question ID : 264330110981

Status : Not Answered

Chosen Option : --

**Comprehension:**

निम्नलिखित गद्यांश में कुछ शब्दों को हटा दिया गया है। दिए गए विकल्पों की सहायता से रिक्त स्थानों की पूर्ति कीजिए। प्रत्येक संख्या के लिए सबसे उपयुक्त विकल्प का चयन कीजिए।  
भारत कृषि प्रधान 1. \_\_\_\_\_ है। यहाँ की अधिकांश जनता 2. \_\_\_\_\_ करती है। कृषि ही उसकी जीविका का साधन है और यही व्यवसाय है। कृषक आज भी 3. \_\_\_\_\_ में रहता है। यद्यपि कुछ दशकों से यह दिखाई दे रहा है कि भारत का किसान अपना व्यवसाय छोड़कर 4. \_\_\_\_\_ की ओर भाग रहा है। फिर भी नगर और गाँवों के बीच की भूमि पर आज भी 5. \_\_\_\_\_ होती है।

**SubQuestion No : 17**

Q.17 रिक्त स्थान 2 की पूर्ति के लिए सबसे उपयुक्त विकल्प का चयन कीजिए।

- Ans
- 1. खेती
  - 2. खेल
  - 3. व्यवसाय
  - 4. नाटक

Question ID : 264330110982

Status : Not Answered

Chosen Option : --

**Comprehension:**

निम्नलिखित गद्यांश में कुछ शब्दों को हटा दिया गया है। दिए गए विकल्पों की सहायता से रिक्त स्थानों की पूर्ति कीजिए। प्रत्येक संख्या के लिए सबसे उपयुक्त विकल्प का चयन कीजिए।  
भारत कृषि प्रधान 1. \_\_\_\_\_ है। यहाँ की अधिकांश जनता 2. \_\_\_\_\_ करती है। कृषि ही उसकी जीविका का साधन है और यही व्यवसाय है। कृषक आज भी 3. \_\_\_\_\_ में रहता है। यद्यपि कुछ दशकों से यह दिखाई दे रहा है कि भारत का किसान अपना व्यवसाय छोड़कर 4. \_\_\_\_\_ की ओर भाग रहा है। फिर भी नगर और गाँवों के बीच की भूमि पर आज भी 5. \_\_\_\_\_ होती है।

**SubQuestion No : 18**

Q.18 रिक्त स्थान 3 की पूर्ति के लिए सबसे उपयुक्त विकल्प का चयन कीजिए।

- Ans  1. शहरों  
 2. गाँवों  
 3. विश्व  
 4. देश

Question ID : 264330110983

Status : Not Answered

Chosen Option : --

**Comprehension:**

निम्नलिखित गद्यांश में कुछ शब्दों को हटा दिया गया है। दिए गए विकल्पों की सहायता से रिक्त स्थानों की पूर्ति कीजिए। प्रत्येक संख्या के लिए सबसे उपयुक्त विकल्प का चयन कीजिए।  
भारत कृषि प्रधान 1. \_\_\_\_\_ है। यहाँ की अधिकांश जनता 2. \_\_\_\_\_ करती है। कृषि ही उसकी जीविका का साधन है और यही व्यवसाय है। कृषक आज भी 3. \_\_\_\_\_ में रहता है। यद्यपि कुछ दशकों से यह दिखाई दे रहा है कि भारत का किसान अपना व्यवसाय छोड़कर 4. \_\_\_\_\_ की ओर भाग रहा है। फिर भी नगर और गाँवों के बीच की भूमि पर आज भी 5. \_\_\_\_\_ होती है।

**SubQuestion No : 19**

Q.19 रिक्त स्थान 4 की पूर्ति के लिए सबसे उपयुक्त विकल्प का चयन कीजिए।

- Ans  1. खेतों  
 2. शहरों  
 3. दूसरे देशों  
 4. भूमि

Question ID : 264330110984

Status : Not Answered

Chosen Option : --

**Comprehension:**

निम्नलिखित गद्यांश में कुछ शब्दों को हटा दिया गया है। दिए गए विकल्पों की सहायता से रिक्त स्थानों की पूर्ति कीजिए। प्रत्येक संख्या के लिए सबसे उपयुक्त विकल्प का चयन कीजिए।  
भारत कृषि प्रधान 1. \_\_\_\_\_ है। यहाँ की अधिकांश जनता 2. \_\_\_\_\_ करती है। कृषि ही उसकी जीविका का साधन है और यही व्यवसाय है। कृषक आज भी 3. \_\_\_\_\_ में रहता है। यद्यपि कुछ दशकों से यह दिखाई दे रहा है कि भारत का किसान अपना व्यवसाय छोड़कर 4. \_\_\_\_\_ की ओर भाग रहा है। फिर भी नगर और गाँवों के बीच की भूमि पर आज भी 5. \_\_\_\_\_ होती है।

**SubQuestion No : 20**

Q.20 रिक्त स्थान 5 की पूर्ति के लिए सबसे उपयुक्त विकल्प का चयन कीजिए।

- Ans
- 1. खाद्यान्न
  - 2. देखरेख
  - 3. पूछताछ
  - 4. खेती

Question ID : 264330110985

Status : Not Answered

Chosen Option : --

KD Job Updates

# Constable GD in CAPFs SSF Rifleman GD in Assam Rifles and Sepoy in NCB Examination 2022

Roll Number	KD Job Updates
Candidate Name	KD Job Updates
Venue Name	iON Digital Zone iDZ Jamshedpur
Exam Date	01/02/2023
Exam Time	9:00 AM - 10:00 AM
Subject	Constable GD Examination 2022

## Section : Part-A-General Intelligence and Reasoning

Q.1 Select the correct mirror image of the given figure when the mirror is placed at MN as shown below.



- Ans
- 1. tEVθEORθ
  - 2. tEV6EORθ
  - 3. tEVθVt
  - 4. tEVθEORθ

Question ID : 26433089460  
Status : Answered  
Chosen Option : 1

Q.2 Select the option that is related to the fourth term in the same way as the first term is related to the second term and the fifth term is related to the sixth term.  
104 : 13 :: ? : 37 :: 168 : 21

- Ans
- 1. 304
  - 2. 248
  - 3. 296
  - 4. 280

Question ID : 26433074548  
Status : Answered  
Chosen Option : 3

Q.3 Which of the following numbers will replace the question mark (?) in the given series?  
2880, 480, 96, ?, 8, 4

- Ans
- 1. 24
  - 2. 76
  - 3. 46
  - 4. 56

Question ID : 26433076748  
Status : Answered  
Chosen Option : 1



Q.4 In a certain code language, 'DANCE' is written as 'AECDN', 'MUSIC' is written as 'IUCMS', how will 'SONG' be written as in that language?

- Ans
- 1. GNSO
  - 2. OSNG
  - 3. OGNS
  - 4. SNGO

Question ID : 26433069654

Status : Answered

Chosen Option : 3

Q.5 Three statements are given, followed by three conclusions numbered I, II and III. Assuming the statements to be true, even if they seem to be at variance with commonly known facts, decide which of the conclusions logically follow(s) from the statements.

Statements:

Some paints are brushes.

All brushes are easels.

Some easels are tables.

Conclusions:

I. Some brushes are tables.

II. Some paints are easels.

III. Some easels are brushes.

- Ans
- 1. Only conclusions I and III follow
  - 2. All conclusions follow
  - 3. Only conclusion III follows
  - 4. Only conclusions II and III follow

Question ID : 26433090996

Status : Answered

Chosen Option : 2

Q.6 Which of the mathematical signs should be interchanged in the below equation to make it mathematically correct?

$$72 - 6 + 2 \times 216 \div 24 = 420$$

- Ans
- 1.  $\times$  and  $\div$
  - 2.  $-$  and  $\times$
  - 3.  $-$  and  $+$
  - 4.  $-$  and  $\div$

Question ID : 264330117561

Status : Answered

Chosen Option : 4

Q.7 Which letter cluster will replace the question mark (?) to complete the given series?  
DKBN, ENWS, ?, GTMC, HWHH

- Ans
- 1. QRFG
  - 2. RQFX
  - 3. GQFR
  - 4. FQRX

Question ID : 26433079424

Status : Answered

Chosen Option : 4

Q.8 Which option will replace the question mark (?) to complete the given figure series?



Ans

✗ 1.



✗ 2.



✓ 3.



✗ 4.



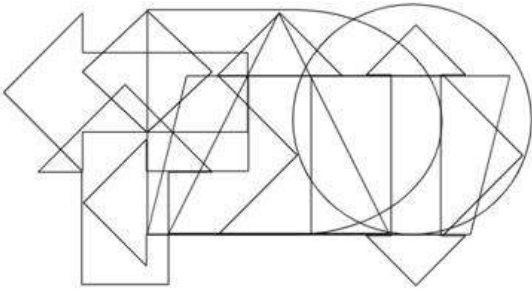
Question ID : 26433078967

Status : Answered

Chosen Option : 3

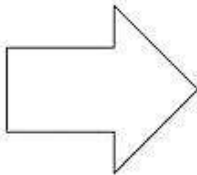
KD Job Updates

Q.9 Select the option figure which is embedded in the given figure. (Rotation is Not allowed)




Ans


✗ 1.



✓ 2.



✗ 3.



✗ 4.



Question ID : 26433085744

Status : Answered

Chosen Option : 2

Q.10 Which two signs should be interchanged to make the given equation correct?

$$790 + 5 \div 58 \times 5 - 96 = 352$$

Ans ✓ 1. + and ÷

✗ 2. + and -

✗ 3. + and ×

✗ 4. ÷ and ×

Question ID : 26433082666

Status : Answered

Chosen Option : 1

Q.11 Which letter-cluster will replace the question mark (?) to complete the given series?  
AZME, CYOG, ?, GWSK, IVUM

- Ans  1. FYRJ  
 2. FXRJ  
 3. EXQI  
 4. FXQJ

Question ID : 26433067939  
Status : Answered  
Chosen Option : 3

Q.12 Which of the following options will replace the question mark (?) in the given series?  
103, 110, 105, ?, 107, 114, 109

- Ans  1. 110  
 2. 108  
 3. 111  
 4. 112

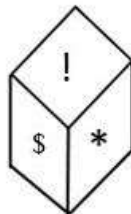
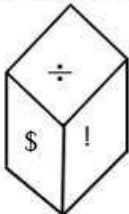
Question ID : 26433089445  
Status : Answered  
Chosen Option : 4

Q.13 Select the option that is related to the fifth term in the same way as the second term is related to the first term and the fourth term is related to the third term.  
QUEST : VUGWS :: REACH : JECGT :: SOLVE : ?

- Ans  1. GXNOV  
 2. GXNQU  
 3. VONXG  
 4. UQNXG

Question ID : 26433087192  
Status : Answered  
Chosen Option : 2

Q.14 Two different positions of the same dice, with the symbols \$, @, !, \*, ∞, ÷, are shown. Find the symbol on the face opposite the face showing '÷'.



- Ans  1. @  
 2. !  
 3. \*  
 4. ∞

Question ID : 26433089512  
Status : Answered  
Chosen Option : 3

Q.15 'P % Q' means 'P is the brother of Q'.  
'P + Q' means 'P is the daughter of Q'.  
'P = Q' means 'P is the son of Q'.  
'P # Q' means 'P is the wife of Q'.  
If L + M % N = O # P, how is P related to L?

- Ans
- 1. Father's father
  - 2. Father's brother
  - 3. Mother's brother
  - 4. Sister's husband

Question ID : 26433087004  
Status : Answered  
Chosen Option : 1

Q.16 In a certain code language, 'MARINE' is coded as '100' and 'NORMAL' is coded as '126'. How will 'REALM' be coded in that language?

- Ans
- 1. 98
  - 2. 88
  - 3. 78
  - 4. 70

Question ID : 26433081514  
Status : Not Attempted and Marked For Review  
Chosen Option : --

Q.17 Which option represents the correct order of the given words as they would appear in the English dictionary?

- 1 pointed
- 2 pollen
- 3 populate
- 4 popular
- 5 podium

- Ans
- 1. 5,3,4,2,1
  - 2. 5,4,2,3,1
  - 3. 5,1,2,4,3
  - 4. 5,3,1,4,2

Question ID : 26433069298  
Status : Answered  
Chosen Option : 3

Q.18 Select the option that is related to the third word in the same way as the second word is related to the first word.  
(The words must be considered as meaningful English words and must not be related to each other based on the number of letters/number of consonants/vowels in the word)

Friend : Foe :: Die : ?

- Ans
- 1. End
  - 2. Live
  - 3. Life
  - 4. Cry

Question ID : 26433067976  
Status : Answered  
Chosen Option : 2

Q.19 Six friends M, N, O, P, Q and R, are sitting in a row facing South. N is exactly in between P and Q. O is to the immediate left of R. M is to the immediate right of P. If Q is at the extreme left of the row, then who is sitting to the immediate left to O?

- Ans
- 1. Q
  - 2. M
  - 3. N
  - 4. P

Question ID : 26433079062  
Status : Answered  
Chosen Option : 2

Q.20 Eight people, D, E, G, H, M, N, Y and Z are sitting in a straight line, facing north. Y sits at one of the extreme ends of the line. Only three people sit between Y and Z. E sits second to the right of Z. Only three people sit between E and D. G sits at one of the positions to the left of D but not at an extreme end of the line. M is not an immediate neighbour of Z. N sits second to the right of H. How many people sit to the left of H?

- Ans
- 1. Three
  - 2. None
  - 3. Two
  - 4. One

Question ID : 26433092424  
Status : Answered  
Chosen Option : 1

Section : Part-B-General Knowledge and General awareness

Q.1 Base changes the colour of the red litmus to \_\_\_\_\_.

- Ans
- 1. blue
  - 2. purple
  - 3. pink
  - 4. yellow

Question ID : 264330115264  
Status : Answered  
Chosen Option : 1

**Q.2 In 1873, he founded the Satya-Shodhak Samaj. Who is referred to as 'he' here?**

- Ans
- 1. Govindrao Phule
  - 2. Gopal Hari Deshmukh
  - 3. Savitribai Phule
  - 4. Jyotiba Phule

Question ID : 264330115725  
Status : Answered  
Chosen Option : 4

**Q.3 At Devprayag the Bhagirathi is Joined by \_\_\_\_\_.**

- Ans
- 1. The Alaknanda
  - 2. The Ghaghra
  - 3. The Kosi
  - 4. The Yamuna

Question ID : 26433087891  
Status : Answered  
Chosen Option : 1

**Q.4 Who took over as the Chief of Army Staff on April 30, 2022?**

- Ans
- 1. Manoj Mukund Naravane
  - 2. Vineet Joshi
  - 3. Nitin Paranjape
  - 4. Manoj Pande

Question ID : 264330115051  
Status : Answered  
Chosen Option : 4

**Q.5 Who looks after the development, maintenance and management of inland water ways in India?**

- Ans
- 1. Steel Authority of India
  - 2. Inland Waterways Authority of India
  - 3. National Highway Authority of India
  - 4. Airport Authority of India

Question ID : 264330115595  
Status : Answered  
Chosen Option : 2

**Q.6 Who among the following politicians became the President of India in July 2022?**

- Ans
- 1. Jai Ram Thakur
  - 2. Ram Nath Kovind
  - 3. Droupadi Murmu
  - 4. Smriti Irani

Question ID : 264330114887  
Status : Answered  
Chosen Option : 3

**Q.7** Personal Disposable income is money that is available for household consumption, \_\_\_\_\_ and spending after accounting for income tax.

- Ans**
- 1. Goods and Service Tax
  - 2. sales tax
  - 3. interest
  - 4. savings

Question ID : 264330115348  
Status : Answered  
Chosen Option : 4

**Q.8** Which of the following Articles of the Constitution of India provides for 'protection against arrest and detention in certain cases'?

- Ans**
- 1. Article 10
  - 2. Article 47
  - 3. Article 35
  - 4. Article 22

Question ID : 26433086806  
Status : Answered  
Chosen Option : 3

**Q.9** Disadvantage of the industrial development is \_\_\_\_\_.

- Ans**
- 1. sustainable development
  - 2. pollution
  - 3. high revenue collection
  - 4. economic growth

Question ID : 264330115393  
Status : Answered  
Chosen Option : 2

**Q.10** As of November 2022, who is the Union Minister of Information & Broadcasting and Youth Affairs & Sports in India?

- Ans**
- 1. Anurag Singh Thakur
  - 2. Kiren Rijju
  - 3. Narayan Rane
  - 4. Ashwini Vaishnav

Question ID : 264330114929  
Status : Answered  
Chosen Option : 1



**Q.11** If there is need for four labourers and seven are working, then what kind of unemployment are the extra three labourers suffering from?

- Ans**
- 1. Cyclic unemployment
  - 2. Frictional unemployment
  - 3. Structural unemployment
  - 4. Disguised unemployment

Question ID : 264330116091  
Status : Answered  
Chosen Option : 4

**Q.12** Which of the following is an example of indirect tax?

- Ans**
- 1. Gift tax
  - 2. Corporation tax for firms
  - 3. Property tax
  - 4. G.S.T.

Question ID : 26433054802  
Status : Answered  
Chosen Option : 4

**Q.13** Limestone, chalk and marble are different forms of \_\_\_\_\_.

- Ans**
- 1. Calcium oxide
  - 2. Calcium carbonate
  - 3. Calcium hydroxide
  - 4. Calcium phosphate

Question ID : 264330115164  
Status : Answered  
Chosen Option : 2

**Q.14** The annual festival of Gangaur, celebrated by the married women of Rajasthan, is observed in the Hindu month of \_\_\_\_\_.

- Ans**
- 1. Phalgun
  - 2. Ashvina
  - 3. Kartika
  - 4. Chaitra

Question ID : 264330115105  
Status : Answered  
Chosen Option : 3

**Q.15 Which country won the maximum gold medal in the 2020 Summer Paralympics?**

- Ans**
- 1. United States of America
  - 2. Great Britain
  - 3. China
  - 4. Russia

Question ID : 264330115924  
Status : **Marked For Review**  
Chosen Option : 3

**Q.16 'Arthashastra' was written by:**

- Ans**
- 1. Kautilya
  - 2. Vishakhadutta
  - 3. Megasthenes
  - 4. Vasudeva

Question ID : 26433090572  
Status : **Answered**  
Chosen Option : 1

**Q.17 Alarvel Valli is an exponent of which of the following classical dance forms?**

- Ans**
- 1. Bharatanatyam
  - 2. Kathak
  - 3. Kathakali
  - 4. Odissi

Question ID : 26433071666  
Status : **Answered**  
Chosen Option : 3

**Q.18**

**In which sport is the field often oval with a rectangular area in the middle, that is 22 yards (20.12 metres) by 10 feet (3.04 metres) wide?**

- Ans**
- 1. Cricket
  - 2. Lawn Tennis
  - 3. Basketball
  - 4. Volleyball

Question ID : 26433089937  
Status : **Answered**  
Chosen Option : 1

Q.19 The \_\_\_\_\_ is the sole link of communication between the Cabinet and the Governor.

- Ans
- 1. Advocate General
  - 2. Chief Minister
  - 3. Chief Election Commissioner
  - 4. Chairman of State Public Service Commission

Question ID : 26433089186  
Status : Answered  
Chosen Option : 2

Q.20 C. V. Chandrasekhar was awarded the Padma Bhushan for his contribution in \_\_\_\_\_.

- Ans
- 1. Kuchipudi
  - 2. Kathak
  - 3. Bharatnatyam
  - 4. Manipuri

Question ID : 264330115893  
Status : Answered  
Chosen Option : 3

Section : Part-C-Elementary Mathematics

Q.1 Find the absolute difference between the greatest 3-digit number and the smallest 4-digit number divisible by 12, 25 and 18.

- Ans
- 1. 900
  - 2. 300
  - 3. 600
  - 4. 1200

Question ID : 264330116646  
Status : Answered  
Chosen Option : 1

Q.2 A shopkeeper announces the following three discount schemes on the purchase of an article. Which of these schemes is the best scheme for a customer?

- A. Two successive discounts of 15% and 18%
- B. Buy 6 articles and get 2 free
- C. A flat discount of 30%

- Ans
- 1. Both schemes A and C give the same discount
  - 2. Scheme A
  - 3. Scheme B
  - 4. Scheme C

Question ID : 26433075762  
Status : Answered  
Chosen Option : 2

Q.3 If 12 men or 9 women can do a piece of work in 36 days, then how many days will 16 men and 18 women take to finish the same work?

- Ans
- 1.  $13\frac{1}{5}$
  - 2.  $12\frac{4}{5}$
  - 3.  $14\frac{3}{5}$
  - 4.  $10\frac{4}{5}$

Question ID : 26433082929  
Status : Answered  
Chosen Option : 4

Q.4 The current birth rate per ten thousand is 450, whereas the corresponding death rate is 120 per ten thousand. Find the net growth rate in terms of the population increase in percentage.

- Ans
- 1. 2.3%
  - 2. 2%
  - 3. 3%
  - 4. 3.3%

Question ID : 26433080127  
Status : Not Attempted and Marked For Review  
Chosen Option : --

Q.5 On mixing two classes A and B of students having average marks 50 and 80, respectively, the average marks obtained is 60. Find the respective ratio of the students in the classes A and B.

- Ans
- 1. 3 : 2
  - 2. 2 : 3
  - 3. 2 : 1
  - 4. 1 : 2

Question ID : 26433081009  
Status : Answered  
Chosen Option : 3

Q.6 A can paint 5 chairs in an hour and B can paint 3 chairs in an hour. Determine how much time they will require to paint 40 chairs when they work together.

- Ans
- 1. 12 hours
  - 2. 10 hours
  - 3. 8 hours
  - 4. 5 hours

Question ID : 26433071340  
Status : Answered  
Chosen Option : 4

Q.7 The weights of two persons A and B are in ratio of 5 : 3 respectively. If the weight of A increases by 5% and the total weight of A and B becomes 92 kg with an increase of 15%, then find the percentage increase in the weight of B. (Correct to 2 decimal places)

- Ans
- 1. 31.67 Percent
  - 2. 30.66 Percent
  - 3. 32.66 Percent
  - 4. 36.66 Percent

Question ID : 26433080162  
Status : Marked For Review  
Chosen Option : 3

Q.8 If a right circular cone of height 24 cm has a volume of  $392 \pi \text{ cm}^3$ , then the curved surface area is:

- Ans
- 1.  $163 \pi \text{ cm}^2$
  - 2.  $191 \pi \text{ cm}^2$
  - 3.  $175 \pi \text{ cm}^2$
  - 4.  $185 \pi \text{ cm}^2$

Question ID : 26433076088  
Status : Answered  
Chosen Option : 3

Q.9 The simplified value of  $\frac{5}{16}$  of  $\frac{7}{8} \times 6 + 15 - 10$  is:

- Ans
- 1.  $\frac{425}{64}$
  - 2.  $\frac{850}{64}$
  - 3.  $\frac{425}{128}$
  - 4.  $\frac{525}{64}$

Question ID : 26433081002  
Status : Answered  
Chosen Option : 1

Q.10 Find the mean proportional of squares of  $\frac{x}{y}$  and  $\frac{y}{z}$ .

Ans

1.  $\left(\frac{x}{z}\right)^{3/2}$

2.  $\sqrt{\frac{x}{z}}$

3.  $\frac{x}{z}$

4.  $\left(\frac{x}{z}\right)^2$

Question ID : 26433079938

Status : Answered

Chosen Option : 3

Q.11 If you are buying one jacket at ₹2,500 and buying two similar jackets at ₹4,500, then find the discount percentage. (Marked price of one jacket is ₹2500)

Ans  1. 12 Percent

2. 15 Percent

3. 10 Percent

4. 18 Percent

Question ID : 26433080173

Status : Answered

Chosen Option : 3

Q.12 A police officer follows a thief who is at a distance of 800 m from him. If they run at a speed of 8 km/h and 7 km/h, respectively, how long does the police officer have to run to catch up with the thief?

Ans  1. 4000 m

2. 4800 m

3. 5600 m

4. 6400 m

Question ID : 26433073133

Status : Answered

Chosen Option : 4

Q.13 In a college, there are two courses. In M.Com. 450 students passed out of 500, while in M.A. 1500 students passed the exam out of 2000 students. What is the combined pass percentage of the college?

- Ans
- 1. 78%
  - 2. 79%
  - 3. 75.5%
  - 4. 76.75%

Question ID : 26433082497  
Status : Answered  
Chosen Option : 1

Q.14 A sum of money amounts to ₹14,112 at the rate of 20% per annum compounded annually for 3 years. Find the sum of money.

- Ans
- 1. ₹8,099.60
  - 2. ₹7,167.70
  - 3. ₹9,166.87
  - 4. ₹8,166.67

Question ID : 26433082722  
Status : Answered  
Chosen Option : 4

Q.15 A thief started running at a speed of 15 m/s, after running for 12 sec a policeman started running to catch the thief in the same direction at a speed of 20 m/s. How many metre will the policeman run to catch the thief?

- Ans
- 1. 740 m
  - 2. 754 m
  - 3. 720 m
  - 4. 744 m

Question ID : 26433075694  
Status : Answered  
Chosen Option : 3

Q.16 If the radius of a sphere is increased by 5%, what percentage increase takes place in the surface area of the sphere?

- Ans
- 1. 18%
  - 2. 25%
  - 3. 10.25%
  - 4. 15.25%

Question ID : 26433083059  
Status : Answered  
Chosen Option : 3

Q.17 The price of a mobile first successively decreases by 5%, 2% and after that the price is increased successively by 10%, 20%, respectively. What is the final change in the price of the mobile?

Ans

1.  $17\frac{153}{250}\%$

2.  $21\frac{113}{250}\%$

3.  $22\frac{123}{250}\%$

4.  $22\frac{223}{250}\%$

Question ID : 26433076073

Status : Answered

Chosen Option : 4

Q.18 A house worth Rs.1,00,000 is sold by A to B at a profit of 6%. B sells house back to A at 3% loss. What is the gain/loss of A in the entire transaction?

Ans

1. Loss of Rs.3,280

2. Gain of Rs.2,802

3. Loss of Rs.2,280

4. Gain of Rs.2,820

Question ID : 26433076373

Status : Answered

Chosen Option : 4

Q.19 Soni sold a mobile phone to Raju at a profit of 10%, Raju sold it to Alok at a loss of 5% and Alok sold it to Sohan at a profit of 20%. If Sohan bought it for ₹ 6,270, what is the cost price (in ₹) of the mobile for Soni?

Ans

1. ₹5,000

2. ₹5,500

3. ₹4,500

4. ₹4,650

Question ID : 26433075546

Status : Answered

Chosen Option : 2



Q.20 Price of 3 CTs is ₹3,300.What would be the price (in ₹) of 10 CTs?

- Ans
- 1. ₹11,000
  - 2. ₹12,000
  - 3. ₹10,000
  - 4. ₹33,000

Question ID : 26433076010  
Status : Answered  
Chosen Option : 1

Section : Part-D-English

Q.1 Select the most appropriate homonym to fill in the blank.

This nation is \_\_\_\_\_ to each of its citizens.

- Ans
- 1. feel
  - 2. fur
  - 3. fair
  - 4. fare

Question ID : 26433088790  
Status : Answered  
Chosen Option : 3

Q.2 Select the most appropriate ANTONYM of the given word.

Truth

- Ans
- 1. Falsity
  - 2. Lay
  - 3. Loyalty
  - 4. Reality

Question ID : 26433072859  
Status : Answered  
Chosen Option : 1

Q.3 Select the option with the correct spelling of the underlined word in the given sentence.

They waited for him in the adjcent room.

- Ans
- 1. adjacentt
  - 2. adgencent
  - 3. adjacent
  - 4. addjacent

Question ID : 26433073610  
Status : Answered  
Chosen Option : 3

Q.4 Select the most appropriate synonym of the given word.

Blend

- Ans  1. Disunity  
 2. Scatter  
 3. Fusion  
 4. Destruction

Question ID : 26433072072  
Status : Answered  
Chosen Option : 3

Q.5 Select the correct spelling of the word to fill in the blank in the given sentence.

Shyam \_\_\_\_\_ an \_\_\_\_\_ letter from his employer.

- Ans  1. received; acknowledgment  
 2. reseived; knowledgement  
 3. recievid; acknowledgment  
 4. recieved; aknowlegdement

Question ID : 26433084767  
Status : Answered  
Chosen Option : 1

Q.6 Select the most appropriate ANTONYM of the underlined word in the following sentence.

It is quite comprehensible that now young people's minds are constantly being reshaped by the media's constant meddling of certain unfathomable ideas and moral standards.

- Ans  1. Constantly  
 2. Comprehensible  
 3. Meddling  
 4. Reshape

Question ID : 26433092863  
Status : Answered  
Chosen Option : 2

Q.7 Select the most appropriate synonym of the underlined word.

A leading actor has said in a new interview that nepotism does not matter, and she is the best example of that.

- Ans  1. favouritism  
 2. neutrality  
 3. unbiasedness  
 4. objectivity

Question ID : 26433088839  
Status : Answered  
Chosen Option : 1

Q.8 Select the most appropriate option that can substitute the underlined segment in the given sentence.

The teacher asked me to tell him what is his name?

- Ans
- 1. what name is he?
  - 2. what the name is.
  - 3. what his name was.
  - 4. what he is called is.

Question ID : 264330102392  
Status : Answered  
Chosen Option : 3

Q.9 Select the most appropriate option to fill in the blank.

He seized a thief by his \_\_\_\_\_ and forced him to answer.

- Ans
- 1. colour
  - 2. choler
  - 3. caller
  - 4. collar

Question ID : 26433087942  
Status : Answered  
Chosen Option : 4

Q.10 Select the correct idiom that can substitute the italicised group of words in the given sentence.

Prof. Ram Prasad was an environmental activist, and apparently, he became *annoying and irritating* to leather factories over the years.

- Ans
- 1. a vexed question
  - 2. a thorn in the flesh
  - 3. a slow coach
  - 4. an uphill task

Question ID : 26433084762  
Status : Answered  
Chosen Option : 2

Q.11 Select the most appropriate synonym for the underlined word in the given sentence.

The moral failure was the result of his lassitude.

- Ans
- 1. derision
  - 2. luxury
  - 3. weariness
  - 4. indulgence

Question ID : 26433073752  
Status : Answered  
Chosen Option : 1

**Q.12** Select the most appropriate option to fill in the blank.  
The child \_\_\_\_\_ not guilty of shoplifting.

- Ans
- 1. questioned
  - 2. nagged
  - 3. said
  - 4. pleaded

Question ID : 26433085599  
Status : Answered  
Chosen Option : 4

**Q.13** Select the correct option to substitute the underlined segment in the given sentence. If no substitution is required, select 'No substitution'.

Slow and steady wins the race.

- Ans
- 1. No substitution
  - 2. had won the race
  - 3. won the race
  - 4. will win the race

Question ID : 26433090808  
Status : Answered  
Chosen Option : 1

**Q.14** The following sentence has been divided into parts. One of them may contain an error. Select the part that contains the error from the given options. If you don't find any error, mark 'No error' as your answer.  
The shield used by the / warrior have been one / made of strong iron.

- Ans
- 1. No error
  - 2. warrior have been one
  - 3. made of strong iron
  - 4. The shield used by the

Question ID : 26433099906  
Status : Answered  
Chosen Option : 2

**Q.15** Select the most appropriate meaning of the underlined idiom that can be substituted in the following sentence.

The robber showed a clean pair of heels when the policeman came nearer.

- Ans
- 1. stole and ran away with heels
  - 2. stood so as to show the heels
  - 3. showed how clean the heels were
  - 4. ran away

Question ID : 26433072234  
Status : Answered  
Chosen Option : 4

**Comprehension:**

In the following passage, some words have been deleted. Read the passage carefully and select the most appropriate option to fill in each blank.

Transformation of a sentence means (1) \_\_\_\_\_ the words or forms of the sentence without changing (2) \_\_\_\_\_ meaning. Such changes can be in the form (3) \_\_\_\_\_ changes from negative sentences into assertive, interrogative or exclamatory sentences and vice versa (4) \_\_\_\_\_ change in narration or change in voice or changes from simple to (5) \_\_\_\_\_ or complex sentences.

**SubQuestion No : 16**

**Q.16 Select the most appropriate option to fill in blank number 1.**

**Ans** ✓ 1. changing

✗ 2. to change

✗ 3. of change

✗ 4. change

Question ID : 26433088564

Status : Answered

Chosen Option : 1

**Comprehension:**

In the following passage, some words have been deleted. Read the passage carefully and select the most appropriate option to fill in each blank.

Transformation of a sentence means (1) \_\_\_\_\_ the words or forms of the sentence without changing (2) \_\_\_\_\_ meaning. Such changes can be in the form (3) \_\_\_\_\_ changes from negative sentences into assertive, interrogative or exclamatory sentences and vice versa (4) \_\_\_\_\_ change in narration or change in voice or changes from simple to (5) \_\_\_\_\_ or complex sentences.

**SubQuestion No : 17**

**Q.17 Select the most appropriate option to fill in blank number 2.**

**Ans** ✓ 1. its

✗ 2. their

✗ 3. her

✗ 4. his

Question ID : 26433088565

Status : Answered

Chosen Option : 1

**Comprehension:**

In the following passage, some words have been deleted. Read the passage carefully and select the most appropriate option to fill in each blank.

Transformation of a sentence means (1) \_\_\_\_\_ the words or forms of the sentence without changing (2) \_\_\_\_\_ meaning. Such changes can be in the form (3) \_\_\_\_\_ changes from negative sentences into assertive, interrogative or exclamatory sentences and vice versa (4) \_\_\_\_\_ change in narration or change in voice or changes from simple to (5) \_\_\_\_\_ or complex sentences.

**SubQuestion No : 18**

**Q.18 Select the most appropriate option to fill in blank number 3.**

- Ans
- 1. in
  - 2. at
  - 3. on
  - 4. of

Question ID : 26433088566

Status : Answered

Chosen Option : 4

**Comprehension:**

In the following passage, some words have been deleted. Read the passage carefully and select the most appropriate option to fill in each blank.

Transformation of a sentence means (1) \_\_\_\_\_ the words or forms of the sentence without changing (2) \_\_\_\_\_ meaning. Such changes can be in the form (3) \_\_\_\_\_ changes from negative sentences into assertive, interrogative or exclamatory sentences and vice versa (4) \_\_\_\_\_ change in narration or change in voice or changes from simple to (5) \_\_\_\_\_ or complex sentences.

**SubQuestion No : 19**

**Q.19 Select the most appropriate option to fill in blank number 4.**

- Ans
- 1. but
  - 2. or
  - 3. yet
  - 4. so

Question ID : 26433088567

Status : Answered

Chosen Option : 2

**Comprehension:**

In the following passage, some words have been deleted. Read the passage carefully and select the most appropriate option to fill in each blank.

Transformation of a sentence means (1) \_\_\_\_\_ the words or forms of the sentence without changing (2) \_\_\_\_\_ meaning. Such changes can be in the form (3) \_\_\_\_\_ changes from negative sentences into assertive, interrogative or exclamatory sentences and vice versa (4) \_\_\_\_\_ change in narration or change in voice or changes from simple to (5) \_\_\_\_\_ or complex sentences.

SubQuestion No : 20

Q.20 Select the most appropriate option to fill in blank number 5.

- Ans  1. compound  
 2. negative  
 3. positive  
 4. assertive

Question ID : 26433088568  
Status : Answered  
Chosen Option : 2

Section : Part-D-Hindi

Q.1 निम्नलिखित शब्द के सही पर्यायवाची शब्द का चयन विकल्पों में से कीजिए।  
बिजली

- Ans  1. दामिनी  
 2. यामा  
 3. पद्मा  
 4. अर्कजा

Question ID : 26433066940  
Status : Not Answered  
Chosen Option : --

Q.2 'कुछ समय उपरान्त हमारा साहित्य उच्चकोटि का था।'  
उपरोक्त वाक्य के किस भाग में अनुपयुक्त शब्द का प्रयोग किया गया है?

- Ans  1. का था  
 2. हमारा  
 3. कुछ समय उपरान्त  
 4. साहित्य उच्चकोटि

Question ID : 26433062804  
Status : Not Answered  
Chosen Option : --

Q.3 निम्नलिखित में से शुद्ध वाक्य कौन सा है?

- Ans
- 1. राध अच्छ लड़की है।
  - 2. राधा अच्छी लड़का है।
  - 3. राधा अच्छी लड़की है।
  - 4. राधा अच्छा लड़की है।

Question ID : 26433080931  
Status : Not Answered  
Chosen Option : --

Q.4 'दीक्षांत समारोह \_\_\_\_\_।' उपर्युक्त वाक्य में रिक्त स्थान के लिए उपयुक्त विकल्प निम्न में से क्या होगा?

- Ans
- 1. से अभिप्राय विवाह पूर्व किए जाने वाले रीति-रिवाज से है
  - 2. से अभिप्राय उपनयन संस्कार से होता है
  - 3. से अभिप्राय संन्यास लेने के लिए किए जाने वाले रीति-रिवाज से है
  - 4. से अभिप्राय शिक्षा के समापन पर किए जाने वाले संस्कार से है

Question ID : 26433067049  
Status : Not Answered  
Chosen Option : --

Q.5 निम्न वाक्यांश के लिए उपयुक्त एक शब्द का चयन विकल्पों में से कीजिए।  
'जो युद्ध में स्थिर रहता है'

- Ans
- 1. योजक
  - 2. युयुत्सु
  - 3. युद्धस्थ
  - 4. युधिष्ठिर

Question ID : 26433070092  
Status : Not Answered  
Chosen Option : --

Q.6 'आग में \_\_\_\_\_ डालना' उपर्युक्त मुहावरे में रिक्त स्थान की पूर्ति उचित शब्द द्वारा कीजिए।

- Ans
- 1. तेल
  - 2. घी
  - 3. मिर्च
  - 4. नमक

Question ID : 26433069689  
Status : Not Answered  
Chosen Option : --



Q.7 दिए गए विकल्पों में से कौन सा शब्द निम्नलिखित वाक्य में रेखांकित शब्द का पर्यायवाची नहीं है?  
भारतीय जनमानस के बीच माता 'सरस्वती' संगीत कला की जननी के रूप में पूजनीय हैं।

- Ans
- 1. शारदा
  - 2. विमला
  - 3. सहचरी
  - 4. हंस वाहिनी

Question ID : 26433091339  
Status : Not Answered  
Chosen Option : --

Q.8 निम्न वाक्य में रेखांकित शब्द के स्थान पर सर्वोचित विकल्प चुनिए।  
'वह अमीर होने पर भी संतुष्ट नहीं है।'

- Ans
- 1. दुःखी
  - 2. सुखी
  - 3. योगी
  - 4. मर्यादित

Question ID : 26433084962  
Status : Not Answered  
Chosen Option : --

Q.9 निम्नलिखित मुहावरे के लिए उपयुक्त सार्थक शब्द क्या होगा?  
आसमान पर चढ़ना

- Ans
- 1. अभिमान होना
  - 2. डर लगना
  - 3. बहुत नाराज होना
  - 4. उड़ते रहना

Question ID : 26433065769  
Status : Not Answered  
Chosen Option : --

Q.10 निम्नलिखित में से 'माता' का समानार्थी शब्द नहीं है-

- Ans
- 1. वामा
  - 2. अंबा
  - 3. मैया
  - 4. जननी

Question ID : 26433085081  
Status : Not Answered  
Chosen Option : --

Q.11 निम्नलिखित वाक्यांश के लिए एक सार्थक शब्द चुनिए।  
जो अस्त-व्यस्त हो

- Ans  1. विज्ञप्ति  
 2. विपर्यस्त  
 3. विकीर्ण  
 4. विद्युत्प्रभ

Question ID : 26433062739  
Status : Not Answered  
Chosen Option : --

Q.12 निम्नलिखित विकल्पों में से किस एक वाक्य में सर्वनाम के प्रयोग सम्बन्धी अशुद्धि है?

- Ans  1. माता जी ! मुझे आपकी बहुत याद आती है।  
 2. मैंने अपना काम कर लिया।  
 3. पुनीत ने महेश से कहा, तुम घर चलो मैं दो घंटे बाद आऊँगा।  
 4. उसके हाथ में जो कलम है, यह मेरी है।

Question ID : 26433062975  
Status : Not Answered  
Chosen Option : --

Q.13 'महात्मा गांधी की साधना \_\_\_\_\_ थी।'  
उपरोक्त वाक्य में 'अलौकिक' शब्द के एकार्थी शब्द से वाक्य पूर्ण कीजिए।

- Ans  1. असाधारण  
 2. अनुस्यूत  
 3. अकथनीय  
 4. असहनीय

Question ID : 26433079241  
Status : Not Answered  
Chosen Option : --

Q.14 'कैंसर रोग बड़ा \_\_\_\_\_ है।' इस वाक्य में रिक्त स्थान की पूर्ति शुद्ध शब्द द्वारा कीजिए।

- Ans  1. दूसाध्य  
 2. दुरसाध्य  
 3. दुःसाध्य  
 4. दुसाधय

Question ID : 26433080906  
Status : Not Answered  
Chosen Option : --

Q.15 'अनु बहुत सुंदर लड़की है।'  
उपरोक्त वाक्य में रेखांकित शब्द क्या है?

- Ans
- 1. विशेषण
  - 2. क्रियाविशेषण
  - 3. विशेष्य
  - 4. प्रविशेषण

Question ID : 26433063053  
Status : Not Answered  
Chosen Option : --

**Comprehension:**

निम्नलिखित गद्यांश में कुछ शब्दों को हटा दिया गया है। दिए गए विकल्पों की सहायता से रिक्त स्थानों की पूर्ति कीजिए। प्रत्येक संख्या के लिए सबसे उपयुक्त विकल्प का चयन कीजिए।  
विद्या अभ्यास से 1. \_\_\_\_\_ होती है। जन्म से ही कोई व्यक्ति किसी काम में 2. \_\_\_\_\_ नहीं होता। अभ्यास के द्वारा जड़ बुद्धि वाले व्यक्ति सुजान अर्थात् 3. \_\_\_\_\_ बन जाते हैं। जो पहले से सुजान होते हैं, अभ्यास उन्हें और अधिक 4. \_\_\_\_\_ बना देता है, जिससे वे कार्य में पारंगत हो जाते हैं। अभ्यास को 5. \_\_\_\_\_ की सीमा में नहीं बाँधा जा सकता है।

**SubQuestion No : 16**

Q.16 रिक्त स्थान 1 की पूर्ति के लिए सबसे उपयुक्त विकल्प का चयन कीजिए।

- Ans
- 1. दूर
  - 2. समझ
  - 3. प्राप्त
  - 4. सफल

Question ID : 264330111071  
Status : Not Answered  
Chosen Option : --

**Comprehension:**

निम्नलिखित गद्यांश में कुछ शब्दों को हटा दिया गया है। दिए गए विकल्पों की सहायता से रिक्त स्थानों की पूर्ति कीजिए। प्रत्येक संख्या के लिए सबसे उपयुक्त विकल्प का चयन कीजिए।  
विद्या अभ्यास से 1. \_\_\_\_\_ होती है। जन्म से ही कोई व्यक्ति किसी काम में 2. \_\_\_\_\_ नहीं होता। अभ्यास के द्वारा जड़ बुद्धि वाले व्यक्ति सुजान अर्थात् 3. \_\_\_\_\_ बन जाते हैं। जो पहले से सुजान होते हैं, अभ्यास उन्हें और अधिक 4. \_\_\_\_\_ बना देता है, जिससे वे कार्य में पारंगत हो जाते हैं। अभ्यास को 5. \_\_\_\_\_ की सीमा में नहीं बाँधा जा सकता है।

**SubQuestion No : 17**

Q.17 रिक्त स्थान 2 की पूर्ति के लिए सबसे उपयुक्त विकल्प का चयन कीजिए।

- Ans
- 1. पारंगत
  - 2. हार
  - 3. धैर्य
  - 4. उत्पन्न

Question ID : 264330111072  
Status : Not Answered  
Chosen Option : --

**Comprehension:**

निम्नलिखित गद्यांश में कुछ शब्दों को हटा दिया गया है। दिए गए विकल्पों की सहायता से रिक्त स्थानों की पूर्ति कीजिए। प्रत्येक संख्या के लिए सबसे उपयुक्त विकल्प का चयन कीजिए।  
विद्या अभ्यास से 1. \_\_\_\_\_ होती है। जन्म से ही कोई व्यक्ति किसी काम में 2. \_\_\_\_\_ नहीं होता। अभ्यास के द्वारा जड़ बुद्धि वाले व्यक्ति सुजान अर्थात् 3. \_\_\_\_\_ बन जाते हैं। जो पहले से सुजान होते हैं, अभ्यास उन्हें और अधिक 4. \_\_\_\_\_ बना देता है, जिससे वे कार्य में पारंगत हो जाते हैं। अभ्यास को 5. \_\_\_\_\_ की सीमा में नहीं बाँधा जा सकता है।

**SubQuestion No : 18**

Q.18 रिक्त स्थान 3 की पूर्ति के लिए सबसे उपयुक्त विकल्प का चयन कीजिए।

- Ans
- 1. अभ्यास
  - 2. कमज़ोर
  - 3. बुद्धिमान
  - 4. बुद्धि

Question ID : 264330111073

Status : Not Answered

Chosen Option : --

**Comprehension:**

निम्नलिखित गद्यांश में कुछ शब्दों को हटा दिया गया है। दिए गए विकल्पों की सहायता से रिक्त स्थानों की पूर्ति कीजिए। प्रत्येक संख्या के लिए सबसे उपयुक्त विकल्प का चयन कीजिए।  
विद्या अभ्यास से 1. \_\_\_\_\_ होती है। जन्म से ही कोई व्यक्ति किसी काम में 2. \_\_\_\_\_ नहीं होता। अभ्यास के द्वारा जड़ बुद्धि वाले व्यक्ति सुजान अर्थात् 3. \_\_\_\_\_ बन जाते हैं। जो पहले से सुजान होते हैं, अभ्यास उन्हें और अधिक 4. \_\_\_\_\_ बना देता है, जिससे वे कार्य में पारंगत हो जाते हैं। अभ्यास को 5. \_\_\_\_\_ की सीमा में नहीं बाँधा जा सकता है।

**SubQuestion No : 19**

Q.19 रिक्त स्थान 4 की पूर्ति के लिए सबसे उपयुक्त विकल्प का चयन कीजिए।

- Ans
- 1. अकुशल
  - 2. मजबूत
  - 3. कुशल
  - 4. सफलता

Question ID : 264330111074

Status : Not Answered

Chosen Option : --

**Comprehension:**

निम्नलिखित गद्यांश में कुछ शब्दों को हटा दिया गया है। दिए गए विकल्पों की सहायता से रिक्त स्थानों की पूर्ति कीजिए। प्रत्येक संख्या के लिए सबसे उपयुक्त विकल्प का चयन कीजिए।  
विद्या अभ्यास से 1. \_\_\_\_\_ होती है। जन्म से ही कोई व्यक्ति किसी काम में 2. \_\_\_\_\_ नहीं होता। अभ्यास के द्वारा जड़ बुद्धि वाले व्यक्ति सुजान अर्थात् 3. \_\_\_\_\_ बन जाते हैं। जो पहले से सुजान होते हैं, अभ्यास उन्हें और अधिक 4. \_\_\_\_\_ बना देता है, जिससे वे कार्य में पारंगत हो जाते हैं। अभ्यास को 5. \_\_\_\_\_ की सीमा में नहीं बाँधा जा सकता है।

**SubQuestion No : 20**

Q.20 रिक्त स्थान 5 की पूर्ति के लिए सबसे उपयुक्त विकल्प का चयन कीजिए।

- Ans  1. मज़बूती  
 2. समय  
 3. मात्रा  
 4. शिक्षा

Question ID : 264330111075

Status : Not Answered

Chosen Option : --

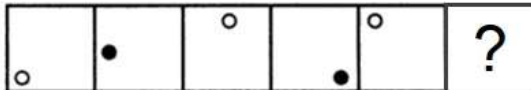
KD Job Updates

## Constable GD in CAPFs SSF Rifleman GD in Assam Rifles and Sepoy in NCB Examination 2022

Roll Number	@Qmaths Telegram Channel
Candidate Name	@Qmaths Telegram Channel
Venue Name	iON Digital Zone iDZ Siliguri
Exam Date	01/02/2023
Exam Time	2:30 PM - 3:30 PM
Subject	Constable GD Examination 2022

### Section : Part-A-General Intelligence and Reasoning

**Q.1** Select the figure from among the given options that can replace the question mark (?) in the following series.

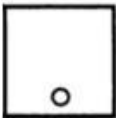


Ans

✗ 1.



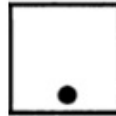
✗ 2.



✗ 3.



✓ 4.



Question ID : 26433080503  
Status : Answered  
Chosen Option : 4

**Q.2** Which option represents the correct order of the given words as they would appear in the English dictionary?

- 1 riddle
- 2 river
- 3 rightful
- 4 ring
- 5 risk

Ans ✓ 1. 1,3,4,5,2

✗ 2. 1,2,3,4,5

✗ 3. 1,3,2,4,5

✗ 4. 1,2,4,5,3

Question ID : 26433069325  
Status : Answered  
Chosen Option : 1

Q.3 In a certain code language, 'EXAM' is written as '625214' and 'TEST' is written as '2162021'. How will 'ASSESSMENT' be written in that language?

- Ans
- 1. 22020620201465121
  - 2. 22020620201461512
  - 3. 22020602201461521
  - 4. 22020620201461521

Question ID : 26433087254  
Status : Answered  
Chosen Option : 4

Q.4 Six family members Viraaj, Deepu, Noor, Prince, Suman and Taran are sitting around a circular table facing the centre. Viraaj is sitting to the immediate right of Noor. Prince is an immediate neighbour of both Viraaj and Deepu. Suman is sitting third to the right of Viraaj. Noor is sitting second to the left of Prince. Who is the immediate neighbour of Deepu and Viraaj?

- Ans
- 1. Suman
  - 2. Prince
  - 3. Taran
  - 4. Noor

Question ID : 26433068866  
Status : Answered  
Chosen Option : 2

Q.5 In a certain code language, FATHER is written as 'IFWMHW', and SISTER is written as 'VNVYHW'. How will 'UNCLE' be written in the same code language?

- Ans
- 1. XSHQI
  - 2. XTGRH
  - 3. XSFQH
  - 4. XSGQH

Question ID : 26433067989  
Status : Answered  
Chosen Option : 4

Q.6 Six students are sitting around a circular table facing the centre. Brianna is sitting second to the right of Mark. Felix is sitting second to the left of Mark. Ann is the immediate neighbour of Brianna and Felix. James is sitting third to the left of Brianna. Afreen is sitting second to the right of James. Who is sitting between Afreen and Ann?

- Ans
- 1. Mark
  - 2. James
  - 3. Brianna
  - 4. Felix

Question ID : 26433081782  
Status : Answered  
Chosen Option : 3

Q.7 Which two numbers(not digits) should be interchanged in the following equation to make it correct?

$$56 \div 16 \times 8 + 45 \times 13 = 697$$

- Ans
- 1. 8 and 13
  - 2. 16 and 8
  - 3. 16 and 45
  - 4. 8 and 45

Question ID : 26433090136  
Status : Answered  
Chosen Option : 2

Q.8 Select the option figure in which the given figure is embedded as its part (rotation is not allowed).



Ans

- 1.
- 2.
- 3.
- 4.

Question ID : 26433069535  
Status : Answered  
Chosen Option : 2



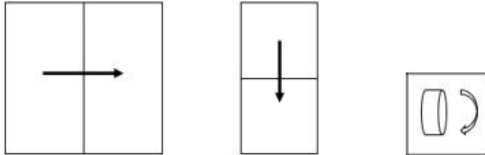
**Q.9** Which two signs should be interchanged to make the below equation mathematically correct?

$$24 - 36 \times 5 + 108 \div 18 = 18$$

- Ans**
- 1. + and -
  - 2. - and +
  - 3. + and ×
  - 4. + and ÷

Question ID : 264330117523  
 Status : Answered  
 Chosen Option : 3

**Q.10** A paper is folded and cut as shown below. How will it appear when unfolded?



**Ans**

- 1.
- 2.
- 3.
- 4.

Question ID : 26433089787  
 Status : Answered  
 Chosen Option : 4

**Q.11** Which of the following numbers will replace the question mark and complete the given number series?  
125, 88, 63, 46, ?

- Ans  1. 35  
 2. 33  
 3. 38  
 4. 37

Question ID : 26433069595  
Status : Not Answered  
Chosen Option : --

**Q.12** Select the letter-cluster from among the given options that can replace the question mark (?) in the following series.  
GSLC, AMOF, UGRI, ?, IUXO

- Ans  1. OULC  
 2. DPGE  
 3. DSTN  
 4. OAUL

Question ID : 26433074751  
Status : Answered  
Chosen Option : 4

**Q.13** Which of the following terms will replace the question mark (?) in the given series?  
?, LSEO, NRDN, PQCM, RPBL

- Ans  1. PFJO  
 2. FPJI  
 3. TFPJ  
 4. JTFP

Question ID : 26433068983  
Status : Answered  
Chosen Option : 4

**Q.14** Select the correct mirror image of the given figure when the mirror is placed at MN as shown below.

6 Z k B M V d  
M ————— N

- Ans  1. e Z K B W A q  
 2. e Z K B W A q  
 3. q V M B K Z e  
 4. e Z K B W A q

Question ID : 26433080798  
Status : Answered  
Chosen Option : 4

Q.15 In a certain code language,  
'A + B' means 'A is the sister of B',  
'A - B' means 'A is the father of B' and  
'A x B' means 'A is the brother of B'.  
How is R related to S if  $Q + R - P \times N - S$ ?

- Ans
- 1. Father
  - 2. Father's father
  - 3. Father's brother
  - 4. Brother

Question ID : 26433070370  
Status : Answered  
Chosen Option : 2

Q.16 In this question, three statements are given, followed by two conclusions numbered I and II. Assuming the statements to be true, even if they seem to be at variance with commonly known facts, decide which of the conclusions logically follows/follow from the statements.

Statements:

All mobiles are computers.  
Some computers are furniture.  
Some furniture are tables.

Conclusions:

I. Some tables are computers.  
II. Some mobiles are furniture.

- Ans
- 1. Both conclusions I and II follow.
  - 2. Only conclusion I follows.
  - 3. Neither conclusion I nor II follows.
  - 4. Only conclusion II follows.

Question ID : 26433070387  
Status : Answered  
Chosen Option : 4

Q.17 Select the option that is related to the fifth letter-cluster in the same way as the second letter-cluster is related to the first letter-cluster and the fourth letter-cluster is related to the third letter-cluster.

TIDE: RRAU :: REST : PVPF :: GAME : ?

- Ans
- 1. EZJU
  - 2. HBNF
  - 3. ICOG
  - 4. TZNN

Question ID : 26433057485  
Status : Answered  
Chosen Option : 1

Q.18 Select the option that is related to the third word in the same way as the second word is related to the first word.

(The words must be considered as meaningful English words and must not be related to each other based on the number of letters/number of consonants/vowels in the word)

Education : Teacher :: Treatment : ?

- Ans
- 1. Hospital
  - 2. Labour
  - 3. Medicine
  - 4. Doctor

Question ID : 26433079472  
Status : Answered  
Chosen Option : 4

**Q.19** Which of the following numbers will replace the question mark (?) in the given series?  
5, 31, 161, 811, ?

- Ans**
- 1. 4500
  - 2. 4825
  - 3. 4444
  - 4. 4061

Question ID : 26433082010  
Status : Not Answered  
Chosen Option : --

**Q.20** Select the set in which the numbers are related in the same way as are the numbers of the following set.

(NOTE : Operations should be performed on the whole numbers, without breaking down the numbers into its constituent digits. E.g. 13 – Operations on 13 such as adding /subtracting/multiplying etc. to 13 can be performed. Breaking down 13 into 1 and 3 and then performing mathematical operations on 1 and 3 is NOT allowed)

(25, 280, 45)  
(18, 192, 30)

- Ans**
- 1. (12, 156, 24)
  - 2. (14, 192, 24)
  - 3. (12, 148, 25)
  - 4. (13, 168, 54)

Question ID : 26433076481  
Status : Not Answered  
Chosen Option : --

Section : Part-B-General Knowledge and General awareness

**Q.1** "to defend the country and render national service when called upon to do so" is stated under\_\_\_\_\_.

- Ans**
- 1. Preamble of the Constitution
  - 2. Directive Principles
  - 3. Fundamental Duties
  - 4. Fundamental Rights

Question ID : 264330115628  
Status : Not Answered  
Chosen Option : --

**Q.2** On the banks of which river was the war between Harshavardhana and Pulakeshin II fought?

- Ans**
- 1. Narmada
  - 2. Krishna
  - 3. Godavari
  - 4. Ganga

Question ID : 26433089128  
Status : Not Answered  
Chosen Option : --

**Q.3 In shot put, the shot which is a metal ball weighs how many kg for men and women?**

- Ans**
- 1. Men-7.5 kg Women-4.5kg
  - 2. Men-7.3 kg Women-4.5kg
  - 3. Men-7kg Women-4kg
  - 4. Men-7.26 kg Women-4kg

Question ID : 264330115942  
Status : Not Answered  
Chosen Option : --

**Q.4 How many pathways are constructed as independently organized conducting tubes in plants?**

- Ans**
- 1. two
  - 2. four
  - 3. five
  - 4. one

Question ID : 264330115204  
Status : Not Answered  
Chosen Option : --

**Q.5 The tenure of the UPSC members is .**

- Ans**
- 1. 6 years or age of 65 whichever is earlier
  - 2. 6 years or age of 62 years
  - 3. 5 years or age of 65 years
  - 4. 4 years or age of 62 years

Question ID : 26433089963  
Status : Not Answered  
Chosen Option : --

**Q.6 The ultimate goal of Mission Indradhanush is to ensure full immunization with all available vaccines for children up to \_\_\_\_\_ years of age.**

- Ans**
- 1. three
  - 2. two
  - 3. eight
  - 4. five

Question ID : 264330116167  
Status : Not Answered  
Chosen Option : --

**Q.7 What was the term of 10th Five Year Plan?**

- Ans**
- 1. 2002-2007
  - 2. 2007-2012
  - 3. 2005-2010
  - 4. 2004-2009

Question ID : 264330116120  
Status : Answered  
Chosen Option : 1

**Q.8 Who among the following inaugurated 2-day PM Kisan Samman Sammelan of India in October 2022?**

- Ans**
- 1. Nirmala Sitharaman
  - 2. Amit Shah
  - 3. Narendra Modi
  - 4. Rajnath Singh

Question ID : 264330114956  
Status : Not Answered  
Chosen Option : --

**Q.9 In India, in relation to Census, what is the full form of NPR?**

- Ans**
- 1. National People Register
  - 2. National Population Record
  - 3. National Population Register
  - 4. National People Record

Question ID : 264330116030  
Status : Not Answered  
Chosen Option : --

**Q.10 Which sector runs nearly 60 percent of dispensaries in India?**

- Ans**
- 1. Cooperative sector
  - 2. Private Sector
  - 3. Joint Sector
  - 4. Public Sector

Question ID : 264330115557  
Status : Not Answered  
Chosen Option : --

**Q.11 Saga Dawa is primarily celebrated by which of the following communities of India in Sikkim?**

- Ans**
- 1. Sikhs
  - 2. Hindus
  - 3. Buddhists
  - 4. Jains

Question ID : 264330105968  
Status : Answered  
Chosen Option : 3

**Q.12 Microfinance is a \_\_\_\_\_ service.**

- Ans**
- 1. financial
  - 2. production
  - 3. software production
  - 4. waste management

Question ID : 264330115310  
Status : Not Answered  
Chosen Option : --

Q.13 Bihu is the popular dance form of which of the following states?

- Ans  1. Tamil Nadu  
 2. Telangana  
 3. Kerala  
 4. Assam

Question ID : 26433071420  
Status : Answered  
Chosen Option : 4

Q.14 The Hindustan Socialist Republican Association (HSRA) was founded at \_\_\_\_\_ in Delhi.

- Ans  1. Ferozeshah Kotla  
 2. Mughal Garden  
 3. Red Fort  
 4. Safdarjung Tomb

Question ID : 26433089888  
Status : Not Answered  
Chosen Option : --

Q.15 Who is the new Managing Director of the National Bank for Financing Infrastructure and Development (NaBFID) effective August 8, 2022?

- Ans  1. Sumita Dawra  
 2. Rajkiran Rai  
 3. Arun Kumar Singh  
 4. Pankaj Jain

Question ID : 264330115013  
Status : Not Answered  
Chosen Option : --

Q.16 In India, the Green Revolution increased the production of which of the following?

- Ans  1. Eggs  
 2. Wheat  
 3. Cotton  
 4. Coal

Question ID : 264330115418  
Status : Answered  
Chosen Option : 2

Q.17 Which among the following elements behaves like alkali metals as well as halogens in its properties?

- Ans  1. Neon  
 2. Helium  
 3. Hydrogen  
 4. Lithium

Question ID : 264330115175  
Status : Not Answered  
Chosen Option : --

Q.18 In which year the Asian Games were held for the second time in India?

- Ans
- 1. 1941
  - 2. 2015
  - 3. 1982
  - 4. 1978

Question ID : 264330116249  
Status : Not Answered  
Chosen Option : --

Q.19 What is used to measure the magnitude of an earthquake?

- Ans
- 1. Anemometer
  - 2. Pressure sensors
  - 3. Gravimeter
  - 4. Richter Scale

Question ID : 264330115993  
Status : Answered  
Chosen Option : 4

Q.20 Who won the Sangeet Natak Akademi Award in Manipuri in 2018?

- Ans
- 1. Radha Sridhar
  - 2. Pasumurthy Ramalinga Sastry
  - 3. Madambi Subramanian Namboodiri
  - 4. Akham Lakshmi Devi

Question ID : 264330115821  
Status : Not Answered  
Chosen Option : --

Section : Part-C-Elementary Mathematics

Q.1 The ratio of two numbers is 4 : 5 and their HCF is 6. Their LCM is:

- Ans
- 1. 120
  - 2. 88
  - 3. 168
  - 4. 72

Question ID : 26433091517  
Status : Answered  
Chosen Option : 1

Q.2 A toy is bought for Rs.950 and sold at Rs.1140. Find the gain percentage.

- Ans
- 1. 16%
  - 2. 21%
  - 3. 20%
  - 4. 19%

Question ID : 26433075144  
Status : Answered  
Chosen Option : 3



Q.3 ₹x were borrowed at the compound interest rate of 5% per annum, 3 years back, where interest were compounding annually. If the present value of the money borrowed is ₹ 18,522, what is the value of x?

- Ans
- 1. ₹16,000
  - 2. ₹15,500
  - 3. ₹15,000
  - 4. ₹16,500

Question ID : 26433075562  
Status : Not Answered  
Chosen Option : --

Q.4 The total surface area of a hemisphere of diameter 14 cm is (Use  $\pi = \frac{22}{7}$ ):

- Ans
- 1.  $308 \text{ cm}^2$
  - 2.  $462 \text{ cm}^2$
  - 3.  $1232 \text{ cm}^2$
  - 4.  $2156 \text{ cm}^2$

Question ID : 26433075747  
Status : Answered  
Chosen Option : 2

Q.5 Reeta can do a piece of work in 14 days and Geeta can do the same work in 21 days. How many days Reeta and Geeta take together to complete the same work?

- Ans
- 1. 8.4
  - 2. 6.4
  - 3. 8.8
  - 4. 6.8

Question ID : 26433075700  
Status : Answered  
Chosen Option : 1

Q.6 Find the greatest number which on dividing 1780 and 2452 leaves the remainder 4 in each case.

- Ans
- 1. 48
  - 2. 52
  - 3. 16
  - 4. 24

Question ID : 26433081468  
Status : Answered  
Chosen Option : 4

Q.7 The mean proportional between  $4 + 2\sqrt{3}$  and  $6 - 3\sqrt{3}$  is:

- Ans
- 1.  $\sqrt{6}$
  - 2.  $\sqrt{18}$
  - 3.  $\sqrt{12}$
  - 4.  $\sqrt{8}$

Question ID : 26433081026  
Status : Answered  
Chosen Option : 1

Q.8 If the price of petrol is increased by 40%, by what percentage (rounded off to 1 decimal place) should its consumption be decreased so that the expenditure on petrol remains the same?

- Ans
- 1. 25.7%
  - 2. 28.6%
  - 3. 40.5%
  - 4. 35.5%

Question ID : 26433082780  
Status : Not Answered  
Chosen Option : --

Q.9 The total surface area of a cuboid is  $4200 \text{ cm}^2$ . If the length and breadth of the cuboid are 15 cm and 16 cm, then find the height of the cuboid.

- Ans
- 1. 3720 cm
  - 2. 62 cm
  - 3. 60 cm
  - 4. 70 cm

Question ID : 26433085494  
Status : Answered  
Chosen Option : 3

Q.10 Sumati travelled from point A to point B at 475 m/min. The moment that Sumati reached point B, Rachna set off from point B, at a speed 1.6 times the speed at which Sumati travelled and reached point C. If the total distance covered from A to C through B was 45.6 km and the time taken from when Sumati started from point A to when Rachna reached point C was 75 minutes, what is the distance between A and B?

- Ans
- 1. 19 km
  - 2. 20 km
  - 3. 18 km
  - 4. 17 km

Question ID : 26433075295  
Status : Not Answered  
Chosen Option : --

Q.11 Two numbers P and Q are such that the sum of 8% of P and 4% of Q is two-third of the sum of 5% of P and 7% of Q. Find the ratio P : Q.

- Ans
- 1. 7 : 1
  - 2. 2 : 5
  - 3. 1 : 7
  - 4. 4 : 9

Question ID : 26433081573  
Status : Not Answered  
Chosen Option : --

Q.12 In a golf club, 90% of members are men and the remaining are women. The average height of men is 170 cm and the average height of women is 165 cm. Find the average height of the club members.

- Ans
- 1. 168.5
  - 2. 167.5
  - 3. 170.5
  - 4. 169.5

Question ID : 26433075905  
Status : Answered  
Chosen Option : 4

Q.13 A can do a piece of work in 18 days. B can do this work in 24 days. A started the work alone. After how many days should B join him, so that the work is finished in 15 days?

- Ans
- 1. 11 days
  - 2. 19 days
  - 3. 13 days
  - 4. 14 days

Question ID : 264330116851  
Status : Not Answered  
Chosen Option : --

Q.14 Find the distance covered by a car moving at a speed of 48 km/h for 3 hours 15 minutes.

- Ans
- 1. 156 km
  - 2. 165 km
  - 3. 145 km
  - 4. 154 km

Question ID : 26433076199  
Status : Not Answered  
Chosen Option : --

Q.15 Successive discounts of 10%, 15% and 4% on ₹12,500 are equal to:

- Ans
- 1. ₹3,320
  - 2. ₹4,150
  - 3. ₹5,240
  - 4. ₹4,520

Question ID : 26433080221  
Status : Not Answered  
Chosen Option : --

Q.16 After giving a discount of 25 percent, selling price of an article becomes Rs. 9510. What is the marked price of the article?

- Ans
- 1. Rs. 11640
  - 2. Rs. 10200
  - 3. Rs. 12680
  - 4. Rs. 10850

Question ID : 264330116736  
Status : Answered  
Chosen Option : 3

Q.17 By selling a commodity for Rs.15,000, Subir loses Rs.2,000. What is his percentage loss?

- Ans
- 1.  $11\frac{13}{17}\%$
  - 2. 11%
  - 3. 10%
  - 4.  $10\frac{13}{17}\%$

Question ID : 26433080305  
Status : Answered  
Chosen Option : 1

Q.18 The average marks in geography exam of a class of 25 students are 64. If the marks of three students were misread as 44, 46 and 61 in lieu of the actual marks 54, 64 and 67 respectively, then find the correct average.

- Ans
- 1. 65.45
  - 2. 65.36
  - 3. 64.55
  - 4. 64.54

Question ID : 26433076220  
Status : Answered  
Chosen Option : 2

**Q.19** What will be the difference in the compound interest if a sum of Rs.12,000 is compounded annually and half-yearly at an annual rate of 10% for a period of 2 years?  
Note :Round off the decimal to the nearest number.

- Ans  1. Rs.66  
 2. Rs.196  
 3. Rs.166  
 4. Rs.46

Question ID : 26433075075  
Status : Not Answered  
Chosen Option : --

**Q.20** Teena spends 30% of her salary on food, 30% of the rest on fuel and saves the remaining Rs.4,900. What is Teena's salary?

- Ans  1. Rs.6,000  
 2. Rs.12,000  
 3. Rs.8,000  
 4. Rs.10,000

Question ID : 26433076033  
Status : Answered  
Chosen Option : 4

Section : Part-D-English

**Q.1** Select the most appropriate ANTONYM of the word given in brackets to fill in the blank.

The company of friends made her feel \_\_\_\_\_ (cranky), as she was all alone in her apartment.

- Ans  1. awful  
 2. wishful  
 3. cheerful  
 4. fearful

Question ID : 26433089747  
Status : Not Answered  
Chosen Option : --

**Q.2** Select the most appropriate synonym of the given word.

Fascinating

- Ans  1. Interesting  
 2. Dominating  
 3. Revolting  
 4. Intimidating

Question ID : 26433073982  
Status : Not Answered  
Chosen Option : --

**Q.3 Select the most appropriate ANTONYM of the given word.**  
Symbolise

- Ans  1. Hide  
 2. Link  
 3. Slide  
 4. Align

Question ID : 26433066088  
Status : Answered  
Chosen Option : 1

**Q.4 Select the INCORRECTLY spelt word.**

- Ans  1. Coherent  
 2. Frekquent  
 3. Collide  
 4. Ferocious

Question ID : 26433073731  
Status : Not Answered  
Chosen Option : --

**Q.5 Select the most appropriate meaning of the given idiom.**

Silver tongue

- Ans  1. Speaking to annoy people  
 2. Speaking to bore people  
 3. Speaking with an eloquent expression to convince people  
 4. Speaking to discourage people

Question ID : 26433074442  
Status : Answered  
Chosen Option : 3

**Q.6 The given sentence is divided into three segments. Select the option that has the segment with a grammatical error. If there is no error, select 'no error' as your answer.**

She have / left by the time / I reach home.

- Ans  1. I reach home  
 2. left by the time  
 3. She have  
 4. No error

Question ID : 26433071860  
Status : Answered  
Chosen Option : 3

**Q.7 Select the most appropriate synonym of the given word.**

Splendid

- Ans  1. Stationary  
 2. Authentic  
 3. Spectacular  
 4. Enticing

Question ID : 26433087913  
Status : Not Answered  
Chosen Option : --

Q.8 Select the INCORRECTLY spelt word.

- Ans  1. Enterprising  
 2. Maticulous  
 3. Erroneous  
 4. Potable

Question ID : 26433073507  
Status : Not Answered  
Chosen Option : --

Q.9 Select the most appropriate meaning of the given idiom.

Public enemy number one

- Ans  1. A person who always smiles  
 2. Someone who is the greatest threat to a group or community  
 3. The opposition party leader  
 4. One who helps the poor

Question ID : 26433072573  
Status : Answered  
Chosen Option : 2

Q.10 Select the word segment that substitutes (replaces) the bracketed word segment correctly and completes the sentence meaningfully:  
Shakespeare was both a dramatist (better than) a poet.

- Ans  1. when not  
 2. as well as  
 3. or  
 4. and

Question ID : 26433088798  
Status : Answered  
Chosen Option : 4

Q.11 Select the most appropriate option that can substitute the underlined segment in the given sentence.

I am been working here for the past ten years.

- Ans  1. have been working here  
 2. is been working here  
 3. was been working here  
 4. having been working here

Question ID : 26433091372  
Status : Answered  
Chosen Option : 1

Q.12 Select the most appropriate ANTONYM of the given word.

Dignify

- Ans  1. Condemn  
 2. Adorn  
 3. Oblige  
 4. Cure

Question ID : 26433090781  
Status : Not Answered  
Chosen Option : --

**Q.13** Select the most appropriate homophone to substitute the underlined word in the given sentence.

These ornaments are coated with gold.

- Ans
- 1. gilled
  - 2. gel
  - 3. gild
  - 4. guild

Question ID : 26433074013  
Status : Not Answered  
Chosen Option : --

**Q.14** Select the most appropriate option to substitute the underlined segment in the given sentence to make it a meaningful sentence. If no substitution is required, select 'No substitution'.

One must not only have the ability to read voraciously but have the necessary training in comprehending and remembering all the relevant details.

- Ans
- 1. not only have the ability for read voraciously but also have
  - 2. not only have the ability to read voraciously but also had
  - 3. No substitution
  - 4. not only have the ability to read voraciously but also have

Question ID : 26433092045  
Status : Answered  
Chosen Option : 4

**Q.15** Select the most appropriate option to fill in the blank.

Scientists are able to quickly \_\_\_\_\_ the outbreak through a new immunisation.

- Ans
- 1. quench
  - 2. scatter
  - 3. quest
  - 4. quash

Question ID : 26433060336  
Status : Not Answered  
Chosen Option : --

**Comprehension:**

In the following passage, some words have been deleted. Read the passage carefully and select the most appropriate option to fill in each blank.

The ability to think clearly and calmly while addressing an 1. \_\_\_\_\_ is neither inborn nor difficult to develop. The presence of an audience should act as a stimulus and not as a 2. \_\_\_\_\_ to thought. Audience fright can be overcome through training and practice. Even great speakers 3. \_\_\_\_\_ stage fright and self-consciousness. Every speaker gets worked up and experiences strain, shock, and excitement before he or she begins to talk. But every speaker who is struggling to gain 4. \_\_\_\_\_ should remember that all meritorious public speaking is accompanied by a little 5. \_\_\_\_\_.

**SubQuestion No : 16**

**Q.16** Select the most appropriate option to fill in blank no. 1.

- Ans
- 1. audience
  - 2. adult
  - 3. accomplice
  - 4. association

Question ID : 26433091359  
Status : Answered  
Chosen Option : 1



**Comprehension:**

In the following passage, some words have been deleted. Read the passage carefully and select the most appropriate option to fill in each blank.

The ability to think clearly and calmly while addressing an 1. \_\_\_\_\_ is neither inborn nor difficult to develop. The presence of an audience should act as a stimulus and not as a 2. \_\_\_\_\_ to thought. Audience fright can be overcome through training and practice. Even great speakers 3. \_\_\_\_\_ stage fright and self-consciousness. Every speaker gets worked up and experiences strain, shock, and excitement before he or she begins to talk. But every speaker who is struggling to gain 4. \_\_\_\_\_ should remember that all meritorious public speaking is accompanied by a little 5. \_\_\_\_\_.

**SubQuestion No : 17**

**Q.17 Select the most appropriate option to fill in blank no. 2.**

- Ans**  1. hindrance  
 2. briefing  
 3. catch  
 4. choice

Question ID : 26433091360  
Status : Answered  
Chosen Option : 1

**Comprehension:**

In the following passage, some words have been deleted. Read the passage carefully and select the most appropriate option to fill in each blank.

The ability to think clearly and calmly while addressing an 1. \_\_\_\_\_ is neither inborn nor difficult to develop. The presence of an audience should act as a stimulus and not as a 2. \_\_\_\_\_ to thought. Audience fright can be overcome through training and practice. Even great speakers 3. \_\_\_\_\_ stage fright and self-consciousness. Every speaker gets worked up and experiences strain, shock, and excitement before he or she begins to talk. But every speaker who is struggling to gain 4. \_\_\_\_\_ should remember that all meritorious public speaking is accompanied by a little 5. \_\_\_\_\_.

**SubQuestion No : 18**

**Q.18 Select the most appropriate option to fill in blank no. 3.**

- Ans**  1. experience  
 2. accorded  
 3. keened  
 4. saved

Question ID : 26433091361  
Status : Answered  
Chosen Option : 1

**Comprehension:**

In the following passage, some words have been deleted. Read the passage carefully and select the most appropriate option to fill in each blank.

The ability to think clearly and calmly while addressing an 1. \_\_\_\_\_ is neither inborn nor difficult to develop. The presence of an audience should act as a stimulus and not as a 2. \_\_\_\_\_ to thought. Audience fright can be overcome through training and practice. Even great speakers 3. \_\_\_\_\_ stage fright and self-consciousness. Every speaker gets worked up and experiences strain, shock, and excitement before he or she begins to talk. But every speaker who is struggling to gain 4. \_\_\_\_\_ should remember that all meritorious public speaking is accompanied by a little 5. \_\_\_\_\_.

**SubQuestion No : 19****Q.19** Select the most appropriate option to fill in blank no. 4.

- Ans
- 1. merit
  - 2. profit
  - 3. money
  - 4. confidence

Question ID : 26433091362

Status : Answered

Chosen Option : 4

**Comprehension:**

In the following passage, some words have been deleted. Read the passage carefully and select the most appropriate option to fill in each blank.

The ability to think clearly and calmly while addressing an 1. \_\_\_\_\_ is neither inborn nor difficult to develop. The presence of an audience should act as a stimulus and not as a 2. \_\_\_\_\_ to thought. Audience fright can be overcome through training and practice. Even great speakers 3. \_\_\_\_\_ stage fright and self-consciousness. Every speaker gets worked up and experiences strain, shock, and excitement before he or she begins to talk. But every speaker who is struggling to gain 4. \_\_\_\_\_ should remember that all meritorious public speaking is accompanied by a little 5. \_\_\_\_\_.

**SubQuestion No : 20****Q.20** Select the most appropriate option to fill in blank no. 5.

- Ans
- 1. childishness
  - 2. happiness
  - 3. nervousness
  - 4. trick

Question ID : 26433091363

Status : Not Answered

Chosen Option : --

## Section : Part-D-Hindi

**Q.1** वर्तनीगत अशुद्धियाँ न रहने वाला वाक्य चुनिए।

- Ans
- 1. मैंने दस रुपये का दही खरीदा।
  - 2. उस कारखाना में बहुत मजदूर है।
  - 3. धूँआँ का रंग काला है।
  - 4. बच्चों, मेरी बातों सुनों।

Question ID : 26433063065

Status : Not Answered

Chosen Option : --

Q.2 निम्नलिखित में से अशुद्ध वाक्य कौन-सा है?

- Ans  1. मेरे पर कृपा करो।  
 2. वरुण प्रतिदिन घूमने जाता है।  
 3. मनाली अत्यंत सुन्दर शहर है।  
 4. कल मैंने दिनभर पढ़ाई की।

Question ID : 26433085138  
Status : Not Answered  
Chosen Option : --

Q.3 निम्नलिखित वाक्यांश के लिए उपयुक्त सार्थक शब्द है-  
ईश्वर में विश्वास करने वाला

- Ans  1. आस्तिक  
 2. दैवीय  
 3. इन्सान  
 4. भगवान

Question ID : 26433065750  
Status : Not Answered  
Chosen Option : --

Q.4 सद कार्यो को हमेशा समर्थन मिलता है और गलत का \_\_\_\_\_ होता है।

समर्थन के विलोम शब्द से वाक्य पूर्ण करें।

- Ans  1. असमर्थ  
 2. असमंजस  
 3. विरोध  
 4. असहयोग

Question ID : 26433080875  
Status : Not Answered  
Chosen Option : --

Q.5 निम्नलिखित वाक्य के रिक्त स्थान में सबसे उपयुक्त मुहावरा क्या होगा?  
नेता बनना हो तो मंत्री जी के साथ \_\_\_\_\_ बन जाओ

- Ans  1. दुश्मन  
 2. पेड़  
 3. दोस्त  
 4. अमरबेल

Question ID : 26433066736  
Status : Not Answered  
Chosen Option : --

Q.6 वाक्य में रेखांकित शब्द को दिए गए शब्दों में से उचित शब्द से बदले।

इलाहाबाद के लोगों के आश्वासन पर यमुना नदी पर पुल बना दिया गया।

- Ans  1. विनती  
 2. आग्रह  
 3. प्रार्थना  
 4. आदेश

Question ID : 26433074411  
Status : Not Answered  
Chosen Option : --

Q.7 आज क्रिकेट के खेल में साहिल ने \_\_\_\_\_ मार लिया।  
रिक्त स्थान की पूर्ति उचित शब्द द्वारा करके मुहावरे को पूरा कीजिए।

- Ans
- 1. मन
  - 2. इनाम
  - 3. मैदान
  - 4. मक्खियाँ

Question ID : 26433062612  
Status : Not Answered  
Chosen Option : --

Q.8 'जड़' शब्द के विलोम से दिए गए वाक्य के रिक्त स्थान की पूर्ति कीजिए।  
हमें अपने \_\_\_\_\_ मन से ईश्वर को अनुभव करना चाहिए।

- Ans
- 1. मूल
  - 2. चेतन
  - 3. मधुर
  - 4. निम्न

Question ID : 26433063088  
Status : Not Answered  
Chosen Option : --

Q.9 निम्नलिखित विकल्पों में से कौन सा एक वाक्य क्रिया-विशेषण से सम्बन्ध रखता है?

- Ans
- 1. डाकिया आता होगा।
  - 2. बुशरा यहाँ आ रही है।
  - 3. हो सकता है आँधी आए।
  - 4. विश्व का कल्याण हो।

Question ID : 26433062955  
Status : Not Answered  
Chosen Option : --

Q.10 नीचे दिए शब्द के लिए उचित वाक्यांश दिए गए विकल्पों में से चुनिए।  
अलौकिक

- Ans
- 1. जो इस लोक का हो
  - 2. जो इस लोक का न हो
  - 3. जिसका अस्तित्व अल्पकाल तक रहे
  - 4. जो कम जानता हो

Question ID : 26433062391  
Status : Not Answered  
Chosen Option : --

Q.11 निम्नलिखित वाक्य में रेखांकित शब्द के स्थान पर उपयुक्त पर्यायवाची शब्द कौन-सा होगा?

बारिश के साथ ही द्रामिनी चमकने लगी।

- Ans
- 1. आँधी
  - 2. तड़ित
  - 3. ओला
  - 4. बुँदे

Question ID : 26433066901  
Status : Not Answered  
Chosen Option : --

Q.12 'लंबोदर' शब्द के लिए उचित वाक्यांश है-

- Ans  1. जिसका उधार लंबा हो  
 2. जिसका हाथ लंबा हो  
 3. जिसका उदर लंबा हो  
 4. जिसकी गर्दन लंबी हो

Question ID : 26433065870  
Status : Not Answered  
Chosen Option : --

Q.13 वाक्य में रेखांकित शब्द के स्थान पर सर्वोचित शब्द का चयन कीजिए।

प्रेम करना तलवार की नोक पर चलना है।

- Ans  1. मूठ  
 2. चपलता  
 3. म्यान  
 4. धार

Question ID : 26433065696  
Status : Not Answered  
Chosen Option : --

Q.14 कौन से विकल्प में विशेषण से बने भाववाचक संज्ञा शब्दों में त्रुटि है?

- Ans  1. ममत्व, अपनापन, निकटता  
 2. लड़कपन, मित्रता, बुढ़ापा  
 3. चतुरा, मीठा, दुर्बला  
 4. गर्मी, सर्दी, नरमी

Question ID : 26433063030  
Status : Not Answered  
Chosen Option : --

Q.15 श्री कृष्ण ने माँ यशोदा से खेलने के लिए विभाकर को खिलौने के रूप में माँगा।

वाक्य में प्रयुक्त शब्द विभाकर का पर्यायवाची शब्द है-

- Ans  1. दानव  
 2. घोड़ा  
 3. सिंह  
 4. चंद्रमा

Question ID : 26433080858  
Status : Not Answered  
Chosen Option : --

**Comprehension:**

निम्नलिखित गद्यांश में से कुछ शब्द हटा दिए गए हैं। दिए गए विकल्पों की सहायता से रिक्त स्थानों की पूर्ति कीजिए। प्रत्येक संख्या के लिए उपयुक्त विकल्प का चयन कीजिए।

दुनिया में अब 1. \_\_\_\_\_ करोड़ों 2. \_\_\_\_\_ छप चुकी हैं। हजारों पुस्तकें रोज़ छपती हैं। तरह-तरह 3. \_\_\_\_\_ अक्षरों में हजारों की तादाद में रोज़ 4. \_\_\_\_\_ समाचार-पत्र छपते रहते हैं। इन सबके मूल में 5. \_\_\_\_\_, अक्षर।

**SubQuestion No : 16**

**Q.16** रिक्त स्थान 1 की पूर्ति के लिए सर्वाधिक उपयुक्त विकल्प का चयन कीजिए।

**Ans** ✓ 1. तक

✗ 2. से

✗ 3. सब

✗ 4. कब

Question ID : 26433079597

Status : Not Answered

Chosen Option : --

**Comprehension:**

निम्नलिखित गद्यांश में से कुछ शब्द हटा दिए गए हैं। दिए गए विकल्पों की सहायता से रिक्त स्थानों की पूर्ति कीजिए। प्रत्येक संख्या के लिए उपयुक्त विकल्प का चयन कीजिए।

दुनिया में अब 1. \_\_\_\_\_ करोड़ों 2. \_\_\_\_\_ छप चुकी हैं। हजारों पुस्तकें रोज़ छपती हैं। तरह-तरह 3. \_\_\_\_\_ अक्षरों में हजारों की तादाद में रोज़ 4. \_\_\_\_\_ समाचार-पत्र छपते रहते हैं। इन सबके मूल में 5. \_\_\_\_\_, अक्षर।

**SubQuestion No : 17**

**Q.17** रिक्त स्थान 2 की पूर्ति के लिए सर्वाधिक उपयुक्त विकल्प का चयन कीजिए।

**Ans** ✗ 1. पाठ

✗ 2. परिणाम

✗ 3. पुस्तकों

✓ 4. पुस्तकें

Question ID : 26433079598

Status : Not Answered

Chosen Option : --

**Comprehension:**

निम्नलिखित गद्यांश में से कुछ शब्द हटा दिए गए हैं। दिए गए विकल्पों की सहायता से रिक्त स्थानों की पूर्ति कीजिए। प्रत्येक संख्या के लिए उपयुक्त विकल्प का चयन कीजिए।

दुनिया में अब 1. \_\_\_\_\_ करोड़ों 2. \_\_\_\_\_ छप चुकी हैं। हजारों पुस्तकें रोज़ छपती हैं। तरह-तरह 3. \_\_\_\_\_ अक्षरों में हजारों की तादाद में रोज़ 4. \_\_\_\_\_ समाचार-पत्र छपते रहते हैं। इन सबके मूल में 5. \_\_\_\_\_, अक्षर।

**SubQuestion No : 18**

**Q.18** रिक्त स्थान 3 की पूर्ति के लिए सर्वाधिक उपयुक्त विकल्प का चयन कीजिए।

**Ans** ✗ 1. का

✓ 2. के

✗ 3. की

✗ 4. में

Question ID : 26433079599

Status : Not Answered

Chosen Option : --

**Comprehension:**

निम्नलिखित गद्यांश में से कुछ शब्द हटा दिए गए हैं। दिए गए विकल्पों की सहायता से रिक्त स्थानों की पूर्ति कीजिए। प्रत्येक संख्या के लिए उपयुक्त विकल्प का चयन कीजिए।

दुनिया में अब 1. \_\_\_\_\_ करोड़ों 2. \_\_\_\_\_ छप चुकी हैं। हजारों पुस्तकें रोज़ छपती हैं। तरह-तरह 3. \_\_\_\_\_ अक्षरों में हजारों की तादाद में रोज़ 4. \_\_\_\_\_ समाचार-पत्र छपते रहते हैं। इन सबके मूल में 5. \_\_\_\_\_, अक्षर।

**SubQuestion No : 19**

**Q.19 रिक्त स्थान 4 की पूर्ति के लिए सर्वाधिक उपयुक्त विकल्प का चयन कीजिए।**

- Ans** ✓ 1. ही  
✗ 2. भर  
✗ 3. तक  
✗ 4. भी

Question ID : 26433079600  
Status : Not Answered  
Chosen Option : --

**Comprehension:**

निम्नलिखित गद्यांश में से कुछ शब्द हटा दिए गए हैं। दिए गए विकल्पों की सहायता से रिक्त स्थानों की पूर्ति कीजिए। प्रत्येक संख्या के लिए उपयुक्त विकल्प का चयन कीजिए।

दुनिया में अब 1. \_\_\_\_\_ करोड़ों 2. \_\_\_\_\_ छप चुकी हैं। हजारों पुस्तकें रोज़ छपती हैं। तरह-तरह 3. \_\_\_\_\_ अक्षरों में हजारों की तादाद में रोज़ 4. \_\_\_\_\_ समाचार-पत्र छपते रहते हैं। इन सबके मूल में 5. \_\_\_\_\_, अक्षर।

**SubQuestion No : 20**

**Q.20 रिक्त स्थान 5 की पूर्ति के लिए सर्वाधिक उपयुक्त विकल्प का चयन कीजिए।**

- Ans** ✓ 1. हैं  
✗ 2. होना  
✗ 3. होती  
✗ 4. क्योंकि

Question ID : 26433079601  
Status : Not Answered  
Chosen Option : --

## Constable GD in CAPFs SSF Rifleman GD in Assam Rifles and Sepoy in NCB Examination 2022

Roll Number	@Qmaths Telegram Channel
Candidate Name	@Qmaths Telegram Channel
Venue Name	ION Digital Zone iDZ 2 Sector 62
Exam Date	01/02/2023
Exam Time	11:45 AM - 12:45 PM
Subject	Constable GD Examination 2022

### Section : Part-A-General Intelligence and Reasoning

**Q.1** Eight people are sitting in two parallel rows with 4 people each in such a way that there is equal distance between adjacent persons.  
In row I – A, B, C and D are seated and all of them are facing south.  
In row II – V, X, Y and Z are seated and all of them are facing north.  
B is the only neighbour of A and A sits exactly opposite Y. V sits at the extreme left end of their row and is exactly opposite C. D sits to the immediate left of C and exactly opposite X.  
Who sits at the immediate left of Y?

- Ans
- 1. X
  - 2. Z
  - 3. V
  - 4. A

Question ID : 26433068746  
Status : Answered  
Chosen Option : 1

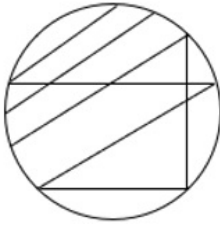
**Q.2** Which option represents the correct order of the given words as they would appear in the English dictionary?  
1 universe  
2 unicorn  
3 understood  
4 unhappy  
5 uniform

- Ans
- 1. 3,4,2,5,1
  - 2. 3,4,5,1,2
  - 3. 3,2,1,5,4
  - 4. 3,2,1,4,5

Question ID : 26433069323  
Status : Answered  
Chosen Option : 1



Q.3 Select the option figure which is embedded in the given figure. (Rotation is NOT allowed)

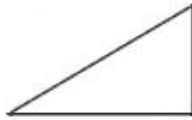


Ans

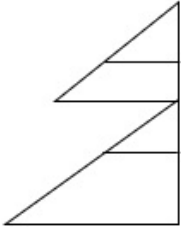
✗ 1.




✓ 2.



✗ 3.



✗ 4.



Question ID : 26433069351  
Status : Answered  
Chosen Option : 2

Q.4 Three Statements are given followed by Three conclusions numbered I, II and III. Assuming the statements to be true, even if they seem to be at variance with commonly known facts, decide which of the conclusions logically follow(s) from the statements.

Statements:

Some tapes are glue.  
Some glue are paints.  
All paints are computers.

Conclusions:

I. Some tapes are paints.  
II. All glue are paints.  
III. Some glue are computers.

Ans

✗ 1. Only conclusion II follows.

✗ 2. Only conclusion I follows.

✗ 3. None of the conclusions follow.

✓ 4. Only conclusion III follows.

Question ID : 26433081793  
Status : Answered  
Chosen Option : 4

**Q.5** Which of the following terms will replace the question mark (?) in the given series?  
BSWG, CTXE, DUYC, ?, FWAY

- Ans
- 1. AAZV
  - 2. EVZA
  - 3. VEAZ
  - 4. ZVEA

Question ID : 26433068981  
Status : Answered  
Chosen Option : 2

**Q.6** Which number will replace the question mark (?) in the following series?  
63, 60, 66, 57, ?

- Ans
- 1. 69
  - 2. 70
  - 3. 55
  - 4. 65

Question ID : 26433068473  
Status : Answered  
Chosen Option : 1

**Q.7** Select the option that is related to the fifth letter-cluster in the same way as the second letter-cluster is related to the first letter-cluster and the fourth letter-cluster is related to the third letter-cluster.  
KBT : PEU :: UQA : ZTB :: FJR : ?

- Ans
- 1. LNT
  - 2. KMQ
  - 3. JMU
  - 4. KMS

Question ID : 26433057746  
Status : Answered  
Chosen Option : 1

**Q.8** Which two signs should be interchanged to make the below equation mathematically correct?  
 $112 - 14 \div 40 + 4 \times 18 = 40$

- Ans
- 1.  $\div$  and  $-$
  - 2.  $+$  and  $\div$
  - 3.  $+$  and  $\times$
  - 4.  $-$  and  $+$

Question ID : 264330117507  
Status : Answered  
Chosen Option : 1

**Q.9** In a code language, 'our son's car' is coded as 'fu da be', 'son's birthday today' is coded as 'la fu ja', 'today our match' is coded as 'he da la'. What is the code for the words 'car match'?

- Ans
- 1. da he
  - 2. fu be
  - 3. la he
  - 4. he be

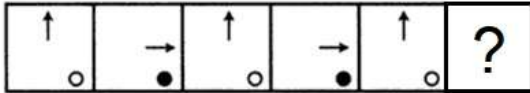
Question ID : 26433086986  
Status : Answered  
Chosen Option : 4

Q.10 Which of the following numbers will replace the question mark (?) in the given series?  
1, 5, 17, 53, ?

- Ans
- 1. 157
  - 2. 145
  - 3. 161
  - 4. 178

Question ID : 26433082008  
Status : Answered  
Chosen Option : 3

Q.11 Select the figure from among the given options that can replace the question mark (?) in the following series.



Ans

- 1.
- 2.
- 3.
- 4.

Question ID : 26433080501  
Status : Answered  
Chosen Option : 1

Q.12 Select the correct combination of mathematical signs to sequentially replace the \* signs and to balance the given equation.  
 $45 * 15 * 13 * 52 * 26 * 37$

- Ans
- 1. =, -, +, +, +
  - 2. +, x, =, +, x
  - 3. ÷, x, =, ÷, +
  - 4. =, x, +, -, -

Question ID : 26433087191  
Status : Answered  
Chosen Option : 3

Q.13 A @ B means 'A is the husband of B'.  
 A & B means 'A is the mother of B'.  
 A # B means 'A is the daughter of B'.  
 A % B means 'A is the sibling of B'.  
 If R # P @ W % F & K, then how is R related to K?

Ans  1. Mother's sister's daughter

2. Brother

3. Brother-in-law

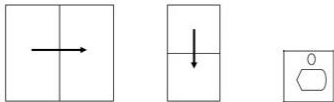
4. Nephew

Question ID : 26433069616

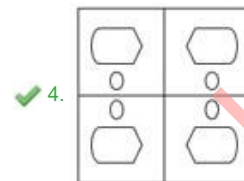
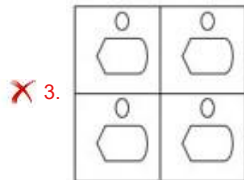
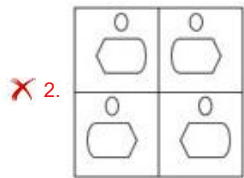
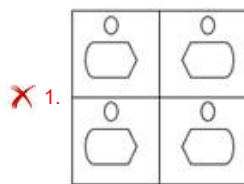
Status : Answered

Chosen Option : 1

Q.14 एक कागज को नीचे दिखाये गए रूप में मोड़ा और काटा जाता है। खोलने पर यह कैसे दिखाई देगा?



Ans



Question ID : 26433089785

Status : Answered

Chosen Option : 4

Q.15 Select the set in which the numbers are related in the same way as are the numbers of the following sets.

(NOTE : Operations should be performed on the whole numbers, without breaking down the numbers into its constituent digits. E.g. 13 – Operations on 13 such as adding/subtracting/multiplying etc. to 13 can be performed. Breaking down 13 into 1 and 3 and then performing mathematical operations on 1 and 3 is not allowed)

(40, 175, 15)

(30, 133, 11)

Ans  1. (29, 110, 13)

2. (25, 91, 12)

3. (17, 45, 10)

4. (25, 108, 10)

Question ID : 26433076547

Status : Answered

Chosen Option : 4

Q.16 Select the correct mirror image of the given figure when the mirror is placed at MN as shown below.



Ans  1. l k h n t f r w m

2. l k h n t f r w m

3. l k h n t f r w m

4. w m r t f n h k l

Question ID : 26433082332

Status : Answered

Chosen Option : 1

Q.17 उस विकल्प का चयन कीजिए जो तीसरे शब्द से उसी प्रकार संबंधित है जिस प्रकार दूसरा शब्द पहले शब्द से संबंधित है (शब्दों को अर्थपूर्ण शब्दों के रूप में माना जाना चाहिए और शब्द में अक्षरों/व्यंजनों /स्वरों की संख्या के आधार पर एक दूसरे से संबंधित नहीं किया जाना चाहिए)  
शंकु : आकृति :: कार : \_\_\_\_\_

Ans  1. स्टेयरिंग

2. टायर

3. वाहन

4. सड़क

Question ID : 26433078825

Status : Answered

Chosen Option : 3

Q.18 Six people A, B, C, D, E and F are sitting around a circular table, facing the centre. E is sitting second to the right of B. F is the immediate neighbour of B and A. D is sitting second to the left of F. Who is sitting to the immediate right of C?

Ans  1. D

2. E

3. B

4. A

Question ID : 26433081515

Status : Answered

Chosen Option : 2

Q.19 In a certain code language, 'PEOPLE' is written as 'QEOQME' and 'MONKEY' is written as 'NOOLEZ'. How will 'SILVER' be written in that language?

- Ans
- 1. TJWMES
  - 2. TIMWES
  - 3. TWJMSE
  - 4. TJWMSE

Question ID : 26433068890  
Status : Answered  
Chosen Option : 2

Q.20 Which of the following terms will replace the question mark (?) in the given series?  
ZLJI, XJHG, VHFE, ?, RDBA

- Ans
- 1. TFDC
  - 2. TFEC
  - 3. RFDC
  - 4. TFDE

Question ID : 26433068633  
Status : Answered  
Chosen Option : 1

Section : Part-B-General Knowledge and General awareness

Q.1 Who among the following was the court poet of Harshavardhana and the author of 'Harshacharita'?

- Ans
- 1. Rajashekhar
  - 2. Kalidas
  - 3. Aryabhatta
  - 4. Banabhatta

Question ID : 26433089126  
Status : Answered  
Chosen Option : 4

Q.2 माइक्रोफाइनेंस ऋण को किसी संपार्श्विक की आवश्यकता \_\_\_\_\_ है।

- Ans
- 1. नहीं होती
  - 2. होती
  - 3. हमेशा होती
  - 4. अधिकांशतः होती

Question ID : 264330115294  
Status : Not Answered  
Chosen Option : --

Q.3 उत्तर-पूर्वी पवनें कहां से उत्पन्न होती हैं?

- Ans
- 1. दक्षिणी गोलार्ध के उष्ण कटिबंधीय उच्च दाब कटिबंध
  - 2. उत्तरी गोलार्ध के उपोष्णकटिबंधीय उच्च दाब कटिबंध
  - 3. उत्तरी गोलार्ध के उष्ण कटिबंधीय निम्न दाब कटिबंध
  - 4. दक्षिणी गोलार्ध के उपोष्णकटिबंधीय उच्च दाब कटिबंध

Question ID : 26433087883  
Status : Answered  
Chosen Option : 3

**Q.4 Who was recognized as the Global Peace Ambassador at the India International Conclave 2022?**

- Ans**
- 1. Aadesh Gindodiya
  - 2. Ankita Sharma
  - 3. Anchal Kumar Srivastava
  - 4. Babita Singh

Question ID : 264330114997  
Status : Not Answered  
Chosen Option : --

**Q.5 How many points advantage must a freestyle wrestler must have against his/ her opponent for the bout to be declared over?**

- Ans**
- 1. 10
  - 2. 14
  - 3. 12
  - 4. 8

Question ID : 264330115934  
Status : Not Answered  
Chosen Option : --

**Q.6 In India Green Revolution was led by :**

- Ans**
- 1. Norman Borlaug
  - 2. M.S. Swaminathan
  - 3. Jawahar Lal Nehru
  - 4. Mahatma Gandhi

Question ID : 264330115416  
Status : Answered  
Chosen Option : 2

**Q.7 Which of the following is known as the Flying Sikh of India?**

- Ans**
- 1. Mohinder Singh
  - 2. Ajit Pal Singh
  - 3. Joginder Singh
  - 4. Milkha Singh

Question ID : 264330116259  
Status : Answered  
Chosen Option : 4

**Q.8 Skill India Mission was launched under the flagship of \_\_\_\_\_.**

- Ans**
- 1. Ministry of Skill Development and Entrepreneurship
  - 2. Ministry of Information and Broadcasting
  - 3. Ministry of Labour and Employment
  - 4. Ministry of Commerce and Industry

Question ID : 264330116191  
Status : Answered  
Chosen Option : 3

**Q.9** What was the approximate percentage contribution of the industrial sector to GDP in 1950-51?

- Ans**  1. 11.8  
 2. 15.2  
 3. 22.4  
 4. 6.2

Question ID : 264330116140  
Status : Not Answered  
Chosen Option : --

**Q.10** The Sattriya Dance in Assam is inspired by \_\_\_\_\_.

- Ans**  1. Shakti Movement  
 2. Bhakti Movement  
 3. Tantrism  
 4. Sufi Movement

Question ID : 26433086564  
Status : Answered  
Chosen Option : 3

**Q.11** What is the atomic mass of Nitrogen?

- Ans**  1. 18  
 2. 14  
 3. 16  
 4. 12

Question ID : 264330115173  
Status : Answered  
Chosen Option : 2

**Q.12** In 1866, who among the following founded the East India Association in London?

- Ans**  1. Raja Ram Mohan Roy  
 2. Dadabhai Naoroji  
 3. Satyendra Nath Tagore  
 4. Sayyid Ahmad Khan

Question ID : 26433090584  
Status : Answered  
Chosen Option : 1

**Q.13** Rukmini Devi Arundale won various accolades in which dance form?

- Ans**  1. Kathak  
 2. Kathakali  
 3. Bharatnatyam  
 4. Lavani

Question ID : 264330115845  
Status : Answered  
Chosen Option : 3



Q.14 Which article of the Indian Constitution states that India is a 'Union of States'?

- Ans  1. Article 1  
 2. Article 2  
 3. Article 10  
 4. Article 11

Question ID : 26433089908  
Status : Answered  
Chosen Option : 1

Q.15 प्रत्येक बारह वर्ष बाद मनाया जाने वाला 'महामस्तकाभिषेक' एक \_\_\_\_\_ त्योहार है।

- Ans  1. सिख  
 2. बौद्ध  
 3. जैन  
 4. हिंदू

Question ID : 26433094889  
Status : Answered  
Chosen Option : 4

Q.16 Pick the odd one out. (Hint: farm processes)

- Ans  1. ploughing  
 2. sowing  
 3. eating  
 4. spraying

Question ID : 264330115541  
Status : Answered  
Chosen Option : 3

Q.17 According to the Census 2011, which state has the lowest female literacy rate in India?

- Ans  1. Bihar  
 2. Rajasthan  
 3. Himachal Pradesh  
 4. Uttar Pradesh

Question ID : 264330116054  
Status : Answered  
Chosen Option : 1

Q.18 भारत के किस केंद्रीय मंत्री ने नवंबर 2022 में भारत अंतर्राष्ट्रीय व्यापार मेले में खादी इंडिया पवेलियन का उद्घाटन किया?

- Ans  1. नारायण राणे  
 2. निर्मला सीतारमण  
 3. सुब्रह्मण्यम जयशंकर  
 4. किरण रिजिजू

Question ID : 264330114954  
Status : Answered  
Chosen Option : 3

**Q.19** Under article 100(3) of the Constitution of India, the quorum to constitute a sitting of either House of Parliament is \_\_\_\_\_ of the total number of Members of the House.

- Ans**
- 1. one-fifth
  - 2. one-third
  - 3. half
  - 4. one-tenth

Question ID : 26433089913  
Status : Answered  
Chosen Option : 2

**Q.20** Which of the following is a symptom of bacterial infection?

- Ans**
- 1. cardiac arrest
  - 2. fracture
  - 3. heart attack
  - 4. fever

Question ID : 264330115228  
Status : Answered  
Chosen Option : 4

Section : Part-C-Elementary Mathematics

**Q.1** The total surface area of a cube whose side is 0.75 cm is:

- Ans**
- 1. 3.735 cm<sup>2</sup>
  - 2. 3.357 cm<sup>2</sup>
  - 3. 3.375 cm<sup>2</sup>
  - 4. 3.537 cm<sup>2</sup>

Question ID : 26433073050  
Status : Answered  
Chosen Option : 3

**Q.2** The compound interest, compounded annually, on Rs.30,000 at 9% per annum is Rs.5,643. The time period (in years) is:

- Ans**
- 1. three
  - 2. Five
  - 3. two
  - 4. four

Question ID : 26433075239  
Status : Answered  
Chosen Option : 3

**Q.3** After the successive discounts of 10% and 12% on the marked price of an item, it is sold for Rs.9,504, then the marked price is \_\_\_\_\_.

- Ans**
- 1. Rs.12,000
  - 2. Rs.15,000
  - 3. Rs.13,000
  - 4. Rs.14,000

Question ID : 26433061306  
Status : Answered  
Chosen Option : 1

Q.4 On a certain sum of money lent out at 40% per annum, the difference between the compound interest for 1 year, payable half yearly, simple interest for 1 year is ₹200. The sum is:

- Ans
- 1. ₹4,500
  - 2. ₹4,000
  - 3. ₹5,500
  - 4. ₹5,000

Question ID : 26433090291  
Status : Answered  
Chosen Option : 4

Q.5 A vendor buys 20 apples for Rs.300 and sells them at 15 for Rs.300. How many apples should be bought and sold to earn a profit of Rs.300?

- Ans
- 1. 65
  - 2. 50
  - 3. 55
  - 4. 60

Question ID : 26433080359  
Status : Answered  
Chosen Option : 4

Q.6 A scooter's value was reduced by 20 percent and is now worth Rs. 72000. What was its original price?

- Ans
- 1. Rs. 88000
  - 2. Rs. 94000
  - 3. Rs. 90000
  - 4. Rs. 100000

Question ID : 264330116795  
Status : Answered  
Chosen Option : 3

Q.7 The score of the eleven players of a cricket team is as follows. 12, 9, 52, 34, 30, 22, 0, 56, 16, 27 and 72. Find the average score of the team.

- Ans
- 1. 35
  - 2. 30
  - 3. 27
  - 4. 34

Question ID : 26433075965  
Status : Answered  
Chosen Option : 2

Q.8 Calculate the volume of a cylinder having a height of 56 cm and a base radius of 28 cm. (Use  $\pi = \frac{22}{7}$ )

- Ans
- 1. 216135 cm<sup>3</sup>
  - 2. 154853 cm<sup>3</sup>
  - 3. 123962 cm<sup>3</sup>
  - 4. 137984 cm<sup>3</sup>

Question ID : 26433080072  
Status : Answered  
Chosen Option : 4

**Q.9** Mohan and Sohan are going from same place at 8 km/h and 9 km/h respectively. If Mohan and Sohan are going in the same direction, then what is the distance between Mohan and Sohan after 4.5 h?

- Ans  1. 4.5 km  
 2. 5.5 km  
 3. 5.0 km  
 4. 4.0 km

Question ID : 26433075688  
Status : Answered  
Chosen Option : 1

**Q.10** Find the fourth proportional to 7, 4 and 7.

- Ans  1. 9  
 2. 6  
 3. 4  
 4. 7

Question ID : 26433080033  
Status : Answered  
Chosen Option : 3

**Q.11** The cost of a washing machine is Rs.25,000. The cost was first increased by 20% and later on it was reduced by 20%. The present cost of the washing machine is:

- Ans  1. Rs.24,000  
 2. Rs.25,500  
 3. Rs.25,000  
 4. Rs.24,500

Question ID : 26433082362  
Status : Answered  
Chosen Option : 1

**Q.12** Kapil, Mohan, and Raju can do a piece of work separately in 18, 36, and 54 days. They started the work together but Mohan left the work 8 days before the completion of work and Raju left the work 6 days before the completion of the work. Find the (approximate) time in which the work is completed.

- Ans  1. 19 days  
 2. 13 days  
 3. 15 days  
 4. 12 days

Question ID : 264330116875  
Status : Answered  
Chosen Option : 2

**Q.13** Find the ratio in which rice at Rs.120 per kg is mixed with rice at Rs.155 per kg to get a mixture worth Rs.135 a kg.

- Ans  1. 3 : 4  
 2. 2 : 3  
 3. 1 : 3  
 4. 4 : 3

Question ID : 26433074915  
Status : Answered  
Chosen Option : 4

Q.14 Amol raised the price of their products by 20 percent. How much discount should they give so as to sell the products on no gain no loss basis?

- Ans  1.  $50/3$  percent  
 2.  $22/5$  percent  
 3.  $27/5$  percent  
 4.  $35/3$  percent

Question ID : 264330116760  
Status : Answered  
Chosen Option : 1

Q.15 The HCF of two numbers is 6 and their LCM is 253080. If one of the numbers is 4218, what is the second number?

- Ans  1. 488  
 2. 120  
 3. 245  
 4. 360

Question ID : 26433080271  
Status : Answered  
Chosen Option : 4

Q.16 Ramesh and Naresh start running on a circular track of length 1920 metres from the same point simultaneously in the same direction with speed of 40 m/sec and 64 m/sec. After how much time from the start will they meet for the first time anywhere on the track?

- Ans  1. 60 sec  
 2. 90 sec  
 3. 80 sec  
 4. 70 sec

Question ID : 26433075530  
Status : Answered  
Chosen Option : 3

Q.17 The highest common factor and the least common multiple of 432, 648 and 576 are \_\_\_\_\_ and \_\_\_\_\_, respectively.

- Ans  1. 72, 5184  
 2. 36, 5184  
 3. 36, 2592  
 4. 72, 2592

Question ID : 26433085417  
Status : Answered  
Chosen Option : 2

Q.18 By selling a computer for Rs.26,000, a man gains 4%. If he sells the computer for Rs.19,000, then his loss will be:

- Ans  1. 24%  
 2. 14%  
 3. 20%  
 4. 16%

Question ID : 26433074986  
Status : Answered  
Chosen Option : 1

Q.19 Samreen and Garima completed a piece of work together in 8 days. If Samreen can complete the same work in 10 days working independently, in how many days will Garima complete the same work alone?

- Ans
- 1. 20
  - 2. 35
  - 3. 40
  - 4. 45

Question ID : 26433075566  
Status : Answered  
Chosen Option : 3

Q.20 Which of the following fractions is the largest?

$$\frac{3}{5}, \frac{7}{10}, \frac{11}{15}, \frac{13}{20}$$

- Ans
- 1.  $\frac{11}{15}$
  - 2.  $\frac{13}{20}$
  - 3.  $\frac{7}{10}$
  - 4.  $\frac{3}{5}$

Question ID : 26433080320  
Status : Answered  
Chosen Option : 1

Section : Part-D-English

Q.1 Select the most appropriate meaning of the given idiom.

Face the music

- Ans
- 1. Listening to melodies from music albums
  - 2. Music for peace and health
  - 3. Dance according to the tune
  - 4. To face the unpleasant consequences of one's actions

Question ID : 26433072576  
Status : Answered  
Chosen Option : 4

Q.2 Select the INCORRECTLY spelt word.

- Ans
- 1. Sentence
  - 2. Tendancy
  - 3. Artificial
  - 4. Matrimony

Question ID : 26433073503  
Status : Answered  
Chosen Option : 2

Q.3 Select the most appropriate synonym of the given word.

Queer

- Ans
- 1. Expedite
  - 2. Ordinary
  - 3. Valid
  - 4. Strange

Question ID : 26433072189  
Status : Answered  
Chosen Option : 4

Q.4 Select the most appropriate option that can substitute the underlined segment in the given sentence. If there is no need to substitute it, select 'No substitution'.  
Some passengers misplaced their luggages before boarding the train.

- Ans
- 1. misplaced their luggage
  - 2. No substitution
  - 3. misplaces their luggages
  - 4. misplaced his luggages

Question ID : 26433093078  
Status : Answered  
Chosen Option : 1

Q.5 Fill in the blanks with the correct homophone.

\_\_\_\_\_ of anything is destructive in nature.

- Ans
- 1. Excess
  - 2. Access
  - 3. Axes
  - 4. Axis

Question ID : 26433092935  
Status : Answered  
Chosen Option : 1

Q.6 Select the most appropriate option that can substitute the underlined segment in the given sentence.

Land with unoccupied possession is pretending to be more valuable.

- Ans
- 1. was similarly to be
  - 2. are likely to be
  - 3. have likely to be
  - 4. is likely to be

Question ID : 26433088506  
Status : Answered  
Chosen Option : 4

Q.7 Select the option that expresses the given sentence in simple past tense.

- A. Arun knew the concepts of geometry.
- B. Arun had been knowing the concepts of geometry.
- C. Arun had known the concepts of geometry.
- D. Arun was knowing the concepts of geometry.

Ans  1. A  
 2. D  
 3. C  
 4. B

Question ID : 26433073515  
Status : Answered  
Chosen Option : 1

Q.8 Select the correct option to substitute the underlined segment in the given sentence. If no substitution is required, select 'No substitution'.

She is married with a doctor.

Ans  1. a doctor  
 2. for a doctor  
 3. to a doctor  
 4. No substitution

Question ID : 26433090817  
Status : Answered  
Chosen Option : 3

Q.9 Select the most appropriate ANTONYM of the underlined word.

As a boy, Charles was a boor who bullied other kids in his neighbourhood.

Ans  1. creep  
 2. blighter  
 3. gentleman  
 4. scum

Question ID : 26433088840  
Status : Answered  
Chosen Option : 3

Q.10 Select the most appropriate synonym of the given word.

Competent

Ans  1. Capable  
 2. Overqualified  
 3. Unfit  
 4. Unskilled

Question ID : 26433086484  
Status : Answered  
Chosen Option : 1



Q.11 Select the most appropriate meaning of the given idiom.

Royal road

- Ans  1. Achieving something by birth  
 2. Achieving something by truth  
 3. Achieving something by false means  
 4. Achieving something trouble free

Question ID : 26433084754  
Status : Answered  
Chosen Option : 1

Q.12 Select the most appropriate ANTONYM of the given word.

Perplex

- Ans  1. Comprehensive  
 2. Complex  
 3. Simplify  
 4. Classify

Question ID : 26433072272  
Status : Answered  
Chosen Option : 1

Q.13 Select the INCORRECTLY spelt word.

- Ans  1. Jeweller  
 2. Naturally  
 3. Maintainance  
 4. Laundry

Question ID : 26433073739  
Status : Answered  
Chosen Option : 3

Q.14 Select the most appropriate option to fill in the blanks and make the sentence meaningful.

She hurt her \_\_\_\_\_ and \_\_\_\_\_.

- Ans  1. heal; tow  
 2. heal; toe  
 3. heel; toe  
 4. heel; tow

Question ID : 26433092102  
Status : Answered  
Chosen Option : 3

Q.15 Select the most appropriate ANTONYM of the word given in the bracket to fill in the blank.

My stomach is so \_\_\_\_\_ (empty) I couldn't possibly eat more.

- Ans  1. teeming  
 2. overfed  
 3. flush  
 4. drained

Question ID : 26433084613  
Status : Answered  
Chosen Option : 2

**Comprehension:**

In the following passage, some words have been deleted. Read the passage carefully and select the most appropriate option to fill in each blank.

The oldest hub of carpet weaving in India is Mirzapur in Bhadohi district of Uttar Pradesh. The Ganga (1)\_\_\_\_\_ past this town with its ghats, ancient temples and waterfalls. The genesis of carpet making in Mirzapur can be (2)\_\_\_\_\_ to the Mughal emperor, Akbar, in the 16th century. A (3)\_\_\_\_\_ of Persian carpet weavers, it is said, on its way to the Mughal court was (4)\_\_\_\_\_ and injured by dacoits on the Grand Trunk Road. The weavers were rescued and given shelter by local villagers. The master weaver of the group decided to settle down here and share his skills with his (5)\_\_\_\_\_. That is how the renowned carpet industry of Mirzapur took root.

**SubQuestion No : 16**

**Q.16 Select the most appropriate option to fill in blank 1.**

Ans  1. spreads

2. grows

3. sets

4. flows

Question ID : 26433090525

Status : Answered

Chosen Option : 4

**Comprehension:**

In the following passage, some words have been deleted. Read the passage carefully and select the most appropriate option to fill in each blank.

The oldest hub of carpet weaving in India is Mirzapur in Bhadohi district of Uttar Pradesh. The Ganga (1)\_\_\_\_\_ past this town with its ghats, ancient temples and waterfalls. The genesis of carpet making in Mirzapur can be (2)\_\_\_\_\_ to the Mughal emperor, Akbar, in the 16th century. A (3)\_\_\_\_\_ of Persian carpet weavers, it is said, on its way to the Mughal court was (4)\_\_\_\_\_ and injured by dacoits on the Grand Trunk Road. The weavers were rescued and given shelter by local villagers. The master weaver of the group decided to settle down here and share his skills with his (5)\_\_\_\_\_. That is how the renowned carpet industry of Mirzapur took root.

**SubQuestion No : 17**

**Q.17 Select the most appropriate option to fill in blank 2.**

Ans  1. extracted

2. reduced

3. traced

4. found

Question ID : 26433090526

Status : Answered

Chosen Option : 3

**Comprehension:**

In the following passage, some words have been deleted. Read the passage carefully and select the most appropriate option to fill in each blank.

The oldest hub of carpet weaving in India is Mirzapur in Bhadohi district of Uttar Pradesh. The Ganga (1)\_\_\_\_\_ past this town with its ghats, ancient temples and waterfalls. The genesis of carpet making in Mirzapur can be (2)\_\_\_\_\_ to the Mughal emperor, Akbar, in the 16th century. A (3)\_\_\_\_\_ of Persian carpet weavers, it is said, on its way to the Mughal court was (4)\_\_\_\_\_ and injured by dacoits on the Grand Trunk Road. The weavers were rescued and given shelter by local villagers. The master weaver of the group decided to settle down here and share his skills with his (5)\_\_\_\_\_. That is how the renowned carpet industry of Mirzapur took root.

**SubQuestion No : 18**

**Q.18 Select the most appropriate option to fill in blank 3.**

- Ans
- 1. crowd
  - 2. army
  - 3. caravan
  - 4. band

Question ID : 26433090527

Status : Answered

Chosen Option : 3

**Comprehension:**

In the following passage, some words have been deleted. Read the passage carefully and select the most appropriate option to fill in each blank.

The oldest hub of carpet weaving in India is Mirzapur in Bhadohi district of Uttar Pradesh. The Ganga (1)\_\_\_\_\_ past this town with its ghats, ancient temples and waterfalls. The genesis of carpet making in Mirzapur can be (2)\_\_\_\_\_ to the Mughal emperor, Akbar, in the 16th century. A (3)\_\_\_\_\_ of Persian carpet weavers, it is said, on its way to the Mughal court was (4)\_\_\_\_\_ and injured by dacoits on the Grand Trunk Road. The weavers were rescued and given shelter by local villagers. The master weaver of the group decided to settle down here and share his skills with his (5)\_\_\_\_\_. That is how the renowned carpet industry of Mirzapur took root.

**SubQuestion No : 19**

**Q.19 Select the most appropriate option to fill in blank 4.**

- Ans
- 1. encroached
  - 2. lost
  - 3. hindered
  - 4. waylaid

Question ID : 26433090528

Status : Answered

Chosen Option : 3

**Comprehension:**

In the following passage, some words have been deleted. Read the passage carefully and select the most appropriate option to fill in each blank.

The oldest hub of carpet weaving in India is Mirzapur in Bhadohi district of Uttar Pradesh. The Ganga (1)\_\_\_\_\_ past this town with its ghats, ancient temples and waterfalls. The genesis of carpet making in Mirzapur can be (2)\_\_\_\_\_ to the Mughal emperor, Akbar, in the 16th century. A (3)\_\_\_\_\_ of Persian carpet weavers, it is said, on its way to the Mughal court was (4)\_\_\_\_\_ and injured by dacoits on the Grand Trunk Road. The weavers were rescued and given shelter by local villagers. The master weaver of the group decided to settle down here and share his skills with his (5)\_\_\_\_\_. That is how the renowned carpet industry of Mirzapur took root.

**SubQuestion No : 20**

**Q.20** Select the most appropriate option to fill in blank 5.

**Ans** ✓ 1. benefactors

✗ 2. beneficiaries

✗ 3. recipients

✗ 4. sponsors

Question ID : 26433090529

Status : Answered

Chosen Option : 4

**Section : Part-D-Hindi**

**Q.1** प्रातःकाल में सूरज की किरणें मन को भाती हैं।

उपरोक्त वाक्य में रेखांकित शब्द के उचित पर्यायवाची शब्द का चयन विकल्पों में से कीजिए।

**Ans** ✓ 1. रश्मि

✗ 2. ईख

✗ 3. जया

✗ 4. प्रभात

Question ID : 26433079720

Status : Not Answered

Chosen Option : --

**Q.2** "उसे यहाँ आने के लिए बोल दो।"

उपरोक्त वाक्य में क्रिया सम्बन्धी त्रुटि पहचानकर निम्नलिखित में से शुद्ध वाक्य का चयन कीजिए।

**Ans** ✓ 1. उसे यहाँ आने के लिए कह दो।

✗ 2. उसे यहाँ आने के लिए सूचना दो।

✗ 3. उसे यहाँ आने के लिए भेज दो।

✗ 4. उसे यहाँ आने के लिए बता दो।

Question ID : 26433066973

Status : Not Answered

Chosen Option : --

**Q.3** निम्नलिखित वाक्य में रेखांकित शब्द के स्थान पर उपयुक्त पर्यायवाची शब्द कौन-सा होगा?

राम कुशल कारीगर है।

**Ans** ✗ 1. भुवन

✗ 2. अलक

✗ 3. चंचल

✓ 4. निपुण

Question ID : 26433066899

Status : Not Answered

Chosen Option : --

Q.4 जिसको लाँघना कठिन हो।  
ऊपर दिए गए वाक्यांश के लिए एक शब्द क्या होगा?

- Ans  1. दुर्लभ  
 2. दुर्दम्य  
 3. दुर्लघ्य  
 4. दुःसाध्य

Question ID : 26433070058  
Status : Not Answered  
Chosen Option : --

Q.5 निम्न वाक्य में रेखांकित शब्द के स्थान पर सर्वोचित शब्द का चयन कीजिए।  
इस पर 'जिसकी लाठी उसकी भैंस' वाली कथा चरितार्थ होती है।

- Ans  1. आख्यायिका  
 2. गाथा  
 3. कहावत  
 4. कहानी

Question ID : 26433065694  
Status : Not Answered  
Chosen Option : --

Q.6 'जो अंडे से जन्म लेता है' वाक्यांश के लिए इनमें से उपयुक्त शब्द कौन-सा है?

- Ans  1. अंत्यज  
 2. जलज  
 3. अंडज  
 4. मलयज

Question ID : 26433066886  
Status : Not Answered  
Chosen Option : --

Q.7 'बीज बोने के थोड़े दिन बाद आंकुर निकलने लगे।' वाक्य के किस भाग में अशुद्ध वर्तनी वाला शब्द है?

- Ans  1. बीज बोने  
 2. बाद आंकुर  
 3. निकलने लगे।  
 4. के थोड़े दिन

Question ID : 26433069699  
Status : Not Answered  
Chosen Option : --

Q.8 'महिला जब भाषण दे रही थी, उसकी आवाज में एक आकर्षण था।' निम्न में से कौन सा इस वाक्य में प्रयुक्त 'आकर्षण' शब्द का विलोम नहीं है?

- Ans  1. अनाकर्षण  
 2. विपकर्षण  
 3. अपकर्षण  
 4. विकर्षण

Question ID : 26433069746  
Status : Not Answered  
Chosen Option : --

Q.9 'पीतांबर \_\_\_\_\_।' उपर्युक्त वाक्य में रिक्त स्थान के लिए उपयुक्त विकल्प निम्न में से क्या होगा?

- Ans
- 1. का अर्थ है – पीले रंग का आकाश
  - 2. का अर्थ है – पीले रंग का व्यक्ति
  - 3. का अर्थ है – पीले रंग का रथ
  - 4. का अर्थ है – पीले रंग का वस्त्र

Question ID : 26433067043  
Status : Not Answered  
Chosen Option : --

Q.10 निम्नलिखित मुहावरे का उपयुक्त अर्थ क्या होगा? कागजी घोड़े दौड़ाना

- Ans
- 1. बिना मतलब का काम करना
  - 2. बहुत पढ़ना लिखना
  - 3. अत्याधिक प्रयास करना
  - 4. पढ़ाई लिखाई करना

Question ID : 26433065777  
Status : Not Answered  
Chosen Option : --

Q.11 उद्यम से ही सफलता मिलती है। उपरोक्त वाक्य में रेखांकित शब्द के विलोम शब्द का चयन विकल्पों में से कीजिए।

- Ans
- 1. नकारा
  - 2. प्रयत्न
  - 3. उद्यमी
  - 4. निरुद्यम

Question ID : 26433079747  
Status : Not Answered  
Chosen Option : --

Q.12 निम्नलिखित अर्थ वाले मुहावरे का चयन विकल्पों में से कीजिए। किसी व्यक्ति का पुरानी परंपरा के साथ चलना

- Ans
- 1. मक्खी मारना
  - 2. शेघी बघारना
  - 3. राई का पहाड़ बनाना
  - 4. लकीर का फकीर होना

Question ID : 26433070003  
Status : Not Answered  
Chosen Option : --

Q.13 निम्नलिखित में से अशुद्ध वाक्य कौन-सा है?

- Ans
- 1. प्रत्येक व्यक्ति कविता नहीं कर सकते।
  - 2. मैं बचपन में वहाँ जाता था।
  - 3. रघु ने निकिता को मिठाई दी।
  - 4. बैल और बकरी घास चरते हैं।

Question ID : 26433066985  
Status : Not Answered  
Chosen Option : --

Q.14 क्षेत्र को लेकर भारत में संघर्ष अब आम बात हो गई है।  
उपरोक्त वाक्य में रेखांकित शब्द के स्थान पर भाववाचक संज्ञा शब्द क्या होगा?

- Ans
- 1. क्षेत्रित
  - 2. क्षत्रिय
  - 3. क्षेत्रीय
  - 4. क्षेत्रीयता

Question ID : 26433062857  
Status : Not Answered  
Chosen Option : --

Q.15 'आशा से बहुत अधिक' इस वाक्यांश के लिए सार्थक शब्द है -

- Ans
- 1. आशातीत
  - 2. वांछित
  - 3. प्रतीक्षित
  - 4. इच्छित

Question ID : 26433062332  
Status : Not Answered  
Chosen Option : --

**Comprehension:**

निम्नलिखित गद्यांश में से कुछ शब्द हटा दिए गए हैं। दिए गए विकल्पों की सहायता से रिक्त स्थानों की पूर्ति कीजिए। प्रत्येक संख्या के लिए उपयुक्त विकल्प का चयन कीजिए।  
एक बार बिल्ली ने उचककर दो में से 1. \_\_\_\_\_ अंडा तोड़ दिया। मेरी माँ ने 2. \_\_\_\_\_ तो उसे दुख हुआ।  
उसने स्टूल 3. \_\_\_\_\_ चढ़कर दूसरे अंडे को बचाने की कोशिश की। लेकिन 4. \_\_\_\_\_ कोशिश में दूसरा अंडा उसी के हाथ से गिरकर टूट 5. \_\_\_\_\_।

SubQuestion No : 16

Q.16 रिक्त स्थान 1 की पूर्ति के लिए सर्वाधिक उपयुक्त विकल्प का चयन कीजिए।

- Ans
- 1. चार
  - 2. पाँच
  - 3. तीन
  - 4. एक

Question ID : 26433079585  
Status : Not Answered  
Chosen Option : --

**Comprehension:**

निम्नलिखित गद्यांश में से कुछ शब्द हटा दिए गए हैं। दिए गए विकल्पों की सहायता से रिक्त स्थानों की पूर्ति कीजिए। प्रत्येक संख्या के लिए उपयुक्त विकल्प का चयन कीजिए।  
एक बार बिल्ली ने उचककर दो में से 1. \_\_\_\_\_ अंडा तोड़ दिया। मेरी माँ ने 2. \_\_\_\_\_ तो उसे दुख हुआ।  
उसने स्टूल 3. \_\_\_\_\_ चढ़कर दूसरे अंडे को बचाने की कोशिश की। लेकिन 4. \_\_\_\_\_ कोशिश में दूसरा अंडा उसी के हाथ से गिरकर टूट 5. \_\_\_\_\_।

SubQuestion No : 17

Q.17 रिक्त स्थान 2 की पूर्ति के लिए सर्वाधिक उपयुक्त विकल्प का चयन कीजिए।

- Ans
- 1. सूँघा
  - 2. देखा
  - 3. पकड़ा
  - 4. सोचा

Question ID : 26433079586  
Status : Not Answered  
Chosen Option : --

**Comprehension:**

निम्नलिखित गद्यांश में से कुछ शब्द हटा दिए गए हैं। दिए गए विकल्पों की सहायता से रिक्त स्थानों की पूर्ति कीजिए। प्रत्येक संख्या के लिए उपयुक्त विकल्प का चयन कीजिए।

एक बार बिल्ली ने उचककर दो में से 1. \_\_\_\_\_ अंडा तोड़ दिया। मेरी माँ ने 2. \_\_\_\_\_ तो उसे दुख हुआ। उसने स्टूल 3. \_\_\_\_\_ चढ़कर दूसरे अंडे को बचाने की कोशिश की। लेकिन 4. \_\_\_\_\_ कोशिश में दूसरा अंडा उसी के हाथ से गिरकर टूट 5. \_\_\_\_\_।

**SubQuestion No : 18**

Q.18 रिक्त स्थान 3 की पूर्ति के लिए सर्वाधिक उपयुक्त विकल्प का चयन कीजिए।

- Ans
- 1. के लिए
  - 2. तक
  - 3. में
  - 4. पर

Question ID : 26433079587

Status : Not Answered

Chosen Option : --

**Comprehension:**

निम्नलिखित गद्यांश में से कुछ शब्द हटा दिए गए हैं। दिए गए विकल्पों की सहायता से रिक्त स्थानों की पूर्ति कीजिए। प्रत्येक संख्या के लिए उपयुक्त विकल्प का चयन कीजिए।

एक बार बिल्ली ने उचककर दो में से 1. \_\_\_\_\_ अंडा तोड़ दिया। मेरी माँ ने 2. \_\_\_\_\_ तो उसे दुख हुआ। उसने स्टूल 3. \_\_\_\_\_ चढ़कर दूसरे अंडे को बचाने की कोशिश की। लेकिन 4. \_\_\_\_\_ कोशिश में दूसरा अंडा उसी के हाथ से गिरकर टूट 5. \_\_\_\_\_।

**SubQuestion No : 19**

Q.19 रिक्त स्थान 4 की पूर्ति के लिए सर्वाधिक उपयुक्त विकल्प का चयन कीजिए।

- Ans
- 1. इससे
  - 2. इसलिए
  - 3. इस
  - 4. इसकी

Question ID : 26433079588

Status : Not Answered

Chosen Option : --

**Comprehension:**

निम्नलिखित गद्यांश में से कुछ शब्द हटा दिए गए हैं। दिए गए विकल्पों की सहायता से रिक्त स्थानों की पूर्ति कीजिए। प्रत्येक संख्या के लिए उपयुक्त विकल्प का चयन कीजिए।

एक बार बिल्ली ने उचककर दो में से 1. \_\_\_\_\_ अंडा तोड़ दिया। मेरी माँ ने 2. \_\_\_\_\_ तो उसे दुख हुआ। उसने स्टूल 3. \_\_\_\_\_ चढ़कर दूसरे अंडे को बचाने की कोशिश की। लेकिन 4. \_\_\_\_\_ कोशिश में दूसरा अंडा उसी के हाथ से गिरकर टूट 5. \_\_\_\_\_।

**SubQuestion No : 20**

Q.20 रिक्त स्थान 5 की पूर्ति के लिए सर्वाधिक उपयुक्त विकल्प का चयन कीजिए।

- Ans
- 1. गए
  - 2. हुआ
  - 3. गया
  - 4. गई

Question ID : 26433079589

Status : Not Answered

Chosen Option : --



## Constable GD in CAPFs SSF Rifleman GD in Assam Rifles and Sepoy in NCB Examination 2022

Roll Number	@Qmaths Telegram Channel
Candidate Name	@Qmaths Telegram Channel
Venue Name	iON Digital Zone iDZ Naino Ka Bas
Exam Date	02/02/2023
Exam Time	11:45 AM - 12:45 PM
Subject	Constable GD Examination 2022

### Section : Part-A-General Intelligence and Reasoning

Q.1 कौन-सा अक्षर-समूह दी गई श्रृंखला में प्रश्नचिह्न (?) के स्थान पर आकर श्रृंखला को पूर्ण करेगा?  
JLNP, ? , LNPR, MOQS, NPRT

- Ans
- 1. KNOR
  - 2. KOMQ
  - 3. KLNP
  - 4. KMOQ

Question ID : 26433067716  
Status : Answered  
Chosen Option : 4

Q.2 नीचे तीन कथनों के बाद तीन निष्कर्ष I, II और III दिए गए हैं। दिए गए कथनों को सत्य मानते हुए भले ही वे सर्वज्ञात तथ्यों से भिन्न प्रतीत होते हों, निर्धारित कीजिए कि कौन-सा/से निष्कर्ष कथनों का तर्कसंगत रूप से अनुसरण करता/करते है/हैं।

कथन:

सभी सेब केले हैं।

सभी अंगूर केले हैं।

सभी केले आलूबुखारे हैं।

निष्कर्ष:

I. सभी सेब आलूबुखारे हैं।

II. सभी अंगूर आलूबुखारे हैं।

III. कुछ अंगूर केले हैं।

- Ans
- 1. केवल निष्कर्ष I और II अनुसरण करते हैं
  - 2. सभी निष्कर्ष अनुसरण करते हैं
  - 3. केवल निष्कर्ष I और III अनुसरण करते हैं
  - 4. केवल निष्कर्ष II और III अनुसरण करते हैं

Question ID : 26433090242  
Status : Answered  
Chosen Option : 2

Q.3 किस विकल्प में निम्नलिखित शब्दों का वह क्रम दिया गया है, जिस क्रम में वे अंग्रेजी शब्दकोश में आते हैं

- I  
1 green  
2 grate  
3 greet  
4 groom  
5 great

- Ans
- 1. 2,4,1,3,5
  - 2. 2,1,3,5,4
  - 3. 2,5,1,3,4
  - 4. 2,3,1,5,4

Question ID : 26433069288  
Status : Answered  
Chosen Option : 3

Q.4 दिए गए समीकरण को संतुलित करने के लिए विकल्पों में दी गई किन दो संख्याओं(अंको को नहीं) को परस्पर बदलना होगा?

$$77 \div 7 - 2 \times 3 + 3 = 4$$

Ans  1. 3 और 77

2. 3 और 7

3. 2 और 4

4. 2 और 7

Question ID : 26433082478

Status : Answered

Chosen Option : 3

Q.5 कीर्ति, सुमन, शुभ, कनक, परी, चारु, श्लोक और शिवी एक वर्गाकार मेज के चारों ओर मेज के केंद्र की ओर मुख करके बैठे हैं। उनमें से कुछ कोनों पर बैठे हैं, जबकि कुछ भुजाओं के ठीक मध्य में बैठे हैं। कीर्ति, शुभ के बाईं ओर तीसरे स्थान पर बैठी है। कीर्ति किसी एक कोने पर बैठी है। कनक, परी के दाईं ओर दूसरे स्थान पर बैठी है। परी किसी भी कोने पर नहीं बैठी है। परी, कीर्ति के ठीक बगल में नहीं बैठी है। सुमन, चारु के ठीक बगल में बैठी है। सुमन किसी भी भुजा के ठीक मध्य में नहीं बैठी है। सुमन और श्लोक के बीच केवल तीन व्यक्ति बैठे हैं। शिवी के दाईं ओर दूसरे स्थान पर कौन बैठा/बैठी है?

Ans  1. सुमन

2. चारु

3. श्लोक

4. शुभ

Question ID : 26433082293

Status : Answered

Chosen Option : 3

Q.6 उस विकल्प का चयन करें जो तीसरे शब्द से उसी प्रकार संबंधित है जिस प्रकार दूसरा शब्द पहले शब्द से संबंधित है। (शब्दों को अर्थपूर्ण शब्दों के रूप में मानना है, और उन्हें शब्द में अक्षरों/व्यंजनों/स्वरों की संख्या के आधार पर एक-दूसरे से संबंधित नहीं करना है।)  
रेलगाडी : पटरी :: कार : ?

Ans  1. बस

2. टायर

3. सड़क

4. पेट्रोल

Question ID : 26433082935

Status : Answered

Chosen Option : 3

Q.7 एक निश्चित कूट भाषा में, 'TEA' को '23' के रूप में लिखा जाता है और 'SKY' को '52' के रूप में लिखा जाता है। उसी भाषा में 'JAM' को कैसे लिखा जाएगा?

Ans  1. 27

2. 21

3. 24

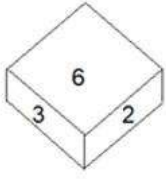
4. 20

Question ID : 26433069641

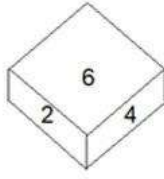
Status : Answered

Chosen Option : 2

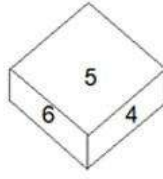
Q.8 एक ही पासे की तीन अलग-अलग स्थितियां दर्शाई गई हैं। '6' दर्शाने वाले फलक के विपरीत फलक पर संख्या ज्ञात करें।



आकृति 1



आकृति 2



आकृति 3

- Ans
- 1. 4
  - 2. 2
  - 3. 1
  - 4. 5

Question ID : 26433089452  
Status : Answered  
Chosen Option : 3

Q.9 यदि '+' का अर्थ है '.', '-' का अर्थ है 'x', 'x' का अर्थ है '-' और '-' का अर्थ है '+', तो निम्नलिखित में से कौन सा समीकरण सही होगा?

- Ans
- 1.  $96 \div 3 + 56 \times 16 - 5 = 45$
  - 2.  $20 + 44 \div 11 \times 3 - 9 = 30$
  - 3.  $108 + 3 - 36 \times 6 \div 15 = 105$
  - 4.  $15 - 6 \times 15 + 80 \div 2 = 25$

Question ID : 264330117551  
Status : Not Answered  
Chosen Option : --

Q.10 उस विकल्प का चयन कीजिए जो तीसरे शब्द से उसी प्रकार संबंधित है जिस प्रकार दूसरा शब्द पहले शब्द से संबंधित है। (शब्दों को अर्थपूर्ण शब्दों के रूप में मानना है और उन्हें शब्द में अक्षरों/व्यंजनों/स्वरों की संख्या के आधार पर एक-दूसरे से संबंधित नहीं करना है।)  
मैंढक : टेडपोल :: कीट : ?

- Ans
- 1. पक्षी
  - 2. मच्छर
  - 3. लार्वा
  - 4. गाय

Question ID : 26433067374  
Status : Answered  
Chosen Option : 3

Q.11 एक निश्चित कूट भाषा में, 'SQUARE' को 'UQSERA' के रूप में लिखा जाता है और 'CIRCLE' को 'RICELC' के रूप में लिखा जाता है, उसी भाषा में 'EQUATE' को कैसे लिखा जाएगा?

- Ans
- 1. UQEETE
  - 2. UQEETA
  - 3. AUQETA
  - 4. QQEETA

Question ID : 26433079391  
Status : Answered  
Chosen Option : 2

Q.12 उस विकल्प का चयन करें, जो पाँचवीं संख्या से उसी प्रकार संबंधित है, जिस प्रकार दूसरी संख्या, पहली संख्या से संबंधित है और चौथी संख्या, तीसरी संख्या से संबंधित है।  
53 : 7 :: 77 : 10 :: 69 : ?

- Ans
- 1. 12
  - 2. 8
  - 3. 11
  - 4. 9

Question ID : 26433069421  
Status : Answered  
Chosen Option : 4

Q.13 L, M, N, O, P, Q, और R एक पंक्ति में पूर्व की ओर मुख करके बैठे हुए हैं। O, N के दाईं ओर ठीक बगल में बैठा है। Q पंक्ति के किसी एक सिरे पर बैठा है और P उसके दाईं ओर ठीक बगल में बैठा है। L, M और N के बीच में बैठा है। पंक्ति के दाएं सिरे पर कौन बैठा है?

- Ans
- 1. M
  - 2. R
  - 3. Q
  - 4. L

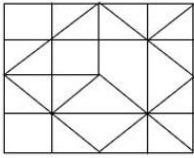
Question ID : 26433074625  
Status : Answered  
Chosen Option : 1

Q.14 निम्नलिखित में से कौन-सी संख्या दी गई श्रृंखला में प्रश्न चिह्न (?) के स्थान पर आएगी?  
400, 410, 425, 450, 490, ?

- Ans
- 1. 545
  - 2. 540
  - 3. 550
  - 4. 555

Question ID : 26433087033  
Status : Answered  
Chosen Option : 3

Q.15 उस विकल्प आकृति का चयन कीजिए, जो दी गई आकृति में अंतर्निहित है। (घूर्णन की अनुमति नहीं है।)

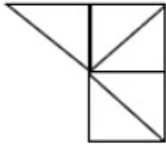


Ans

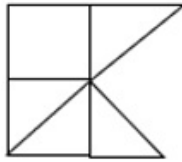
✓ 1.



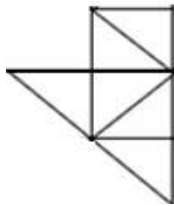
✗ 2.



✗ 3.



✗ 4.



Question ID : 26433081519

Status : Answered

Chosen Option : 4

Q.16 'P & Q' का अर्थ है 'P, Q की बहन है'  
'P % Q' का अर्थ है 'P, Q का भाई है'  
'P \$ Q' का अर्थ है 'P, Q की माता है'  
'P = Q' का अर्थ है 'P, Q का पिता है'  
A \$ B = C & D  
C, A से किस प्रकार संबंधित है?

Ans

✗ 1. पुत्री

✗ 2. बहन

✗ 3. माता

✓ 4. पोती

Question ID : 26433083115

Status : Answered

Chosen Option : 4

Q.17 यदि श्रृंखला जारी रखनी है तो कौन-सी आकृति प्रश्न चिह्न (?) के स्थान पर

आएगी?

A D	T S	S A	V T	
S R	D A	T D	A S	?
	T	R	V	D

Ans

✗ 1.

T S
V A
D

✓ 2.

T S
V A
M

✗ 3.

A V
S T
D

✗ 4.

A V
S T
M

Question ID : 26433076640  
Status : Answered  
Chosen Option : 4

Q.18 निम्न में से कौन सी संख्या दी गई श्रृंखला में प्रश्नचिह्न (?) के स्थान पर आएगी?  
133, 156, ?, 202, 225, 248

Ans

✗ 1. 173

✗ 2. 166

✓ 3. 179

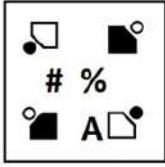
✗ 4. 186

Question ID : 26433076736  
Status : Answered  
Chosen Option : 3

Q.19 दर्पण को दाईं ओर रखे जाने पर, निम्नलिखित में से कौन-सी आकृति दी गई प्रश्न आकृति

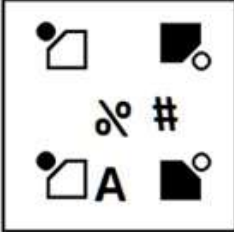
का सटीक दर्पण प्रतिबिम्ब होगी?

प्रश्न आकृति:




Ans

✗ 1.




✗ 2.



✗ 3.



✓ 4.



Question ID : 26433087085

Status : Answered

Chosen Option : 4

Q.20 दिए गए विकल्पों में से उस अक्षर-समूह का चयन कीजिए जो निम्न श्रृंखला में प्रश्न-चिह्न (?) के स्थान पर आ सकता है।  
RAP, TEV, VIB, XMH, ?

Ans ✓ 1. ZQN

✗ 2. YQN

✗ 3. YQB

✗ 4. ZQB

Question ID : 26433079032

Status : Answered

Chosen Option : 1

Section : Part-B-General Knowledge and General awareness

Q.1 प्लास्टर ऑफ पेरिस का रासायनिक नाम क्या है?

- Ans
- 1. कैल्शियम हाइपोक्लोराइड
  - 2. कैल्शियम कार्बोनेट
  - 3. कैल्शियम ऑक्साइड
  - 4. कैल्शियम सल्फेट हेमीहाइड्रेट

Question ID : 264330115154  
Status : Answered  
Chosen Option : 2

Q.2 राष्ट्रीय आय की गणना में \_\_\_\_\_ वर्ष (वर्षों) की समयावधि को ध्यान में रखा जाता है।

- Ans
- 1. दो
  - 2. एक
  - 3. पांच
  - 4. दस

Question ID : 264330115338  
Status : Answered  
Chosen Option : 3

Q.3 नवंबर 2022 तक की स्थिति के अनुसार, भव्य बिश्रोई, जो नवंबर 2022 में आदमपुर, हरियाणा से विधान सभा के सदस्य के रूप में चुने गए थे, \_\_\_\_\_ राजनीतिक दल से संबंधित हैं।

- Ans
- 1. भारतीय जनता पार्टी
  - 2. भारतीय राष्ट्रीय कांग्रेस
  - 3. भारतीय कम्युनिस्ट पार्टी
  - 4. राष्ट्रवादी कांग्रेस पार्टी

Question ID : 264330114919  
Status : Answered  
Chosen Option : 1

Q.4 ओलंपियन नीरज चोपड़ा ने 2020 ओलंपिक खेलों में \_\_\_\_\_ की दूरी तक भाला फेंककर स्वर्ण पदक हासिल किया।

- Ans
- 1. 88.01 m
  - 2. 89.58 m
  - 3. 87.58 m
  - 4. 87.85 m

Question ID : 26433092322  
Status : Not Answered  
Chosen Option : --

Q.5 जम्मू और कश्मीर पुनर्गठन (संशोधन) विधेयक, 2021 को \_\_\_\_\_ को राज्यसभा में पेश किया गया था।

- Ans
- 1. 4 फरवरी, 2021
  - 2. 4 जनवरी, 2021
  - 3. 4 अप्रैल, 2021
  - 4. 14 मार्च, 2021

Question ID : 264330116227  
Status : Not Answered  
Chosen Option : --



Q.6 जून 2022 में, केंद्रीय प्रत्यक्ष कर बोर्ड (CBDT) के नये अध्यक्ष के रूप में किसे नियुक्त किया गया?

- Ans  1. नितिन गुप्ता  
 2. प्रमोद मोदी  
 3. संगीता सिंह  
 4. जगन्नाथ विद्याधर महापात्रा

Question ID : 264330115041  
Status : Not Answered  
Chosen Option : --

Q.7 निम्नलिखित में से किसे 2012 में केरल राज्य कथकली पुरस्कार से सम्मानित किया गया था?

- Ans  1. शोभना नारायण  
 2. कलामंडलम वसु पिशारोडी  
 3. कलामंडलम कल्याणिकुट्टी अम्मा  
 4. अनुराधा पाण्डेय

Question ID : 264330115881  
Status : Answered  
Chosen Option : 3

Q.8 अशोक ने अपने शिलालेख में उल्लेख किया है कि उसने राजा बनने के \_\_\_\_\_ बाद कलिंग पर विजय प्राप्त की थी।

- Ans  1. सात वर्ष  
 2. दस वर्ष  
 3. नौ वर्ष  
 4. आठ वर्ष

Question ID : 26433085215  
Status : Answered  
Chosen Option : 3

Q.9 निम्नलिखित में से कौन-सी, भारत की अंतिम पंचवर्षीय योजना थी?

- Ans  1. 12वीं  
 2. 11वीं  
 3. 13वीं  
 4. 10वीं

Question ID : 26433092381  
Status : Answered  
Chosen Option : 3

Q.10 \_\_\_\_\_ एक ऐसी फसल है जिसका उपयोग भोजन और चारे दोनों के रूप में किया जाता है। यह एक खरीफ फसल है जिसे 21°C से 27°C के बीच तापमान की आवश्यकता होती है और पुरानी जलोढ़ मिट्टी में अच्छी तरह से बढ़ती है।

- Ans  1. चावल  
 2. जूट  
 3. मक्का  
 4. गेहूं

Question ID : 26433054624  
Status : Answered  
Chosen Option : 1

Q.11 निम्नलिखित में से कौन सा वह पर्यावरणीय घटक नहीं है, जो वातावरण पोषकों के मुक्त होने की दर तय करते हैं?

- Ans  1. जनसंख्या  
 2. मिट्टी  
 3. ताप  
 4. आर्द्रता

Question ID : 264330115257  
Status : Answered  
Chosen Option : 1

Q.12 2021 की नीति (NITI) आयोग की रिपोर्ट के अनुसार, ग्रामीण भारत की जनसंख्या का कितना प्रतिशत गरीबी रेखा से नीचे जीवन यापन कर रही है?

- Ans  1. 7.65%  
 2. 32.75%  
 3. 12.4%  
 4. 23.4%

Question ID : 26433092886  
Status : Answered  
Chosen Option : 4

Q.13 1919 में, गांधीजी ने \_\_\_\_\_ के विरोध में सत्याग्रह का आह्वान किया था।

- Ans  1. भारतीय परिषद अधिनियम  
 2. पिट्स इंडिया एक्ट  
 3. रॉलेट एक्ट  
 4. रेगुलेटिंग एक्ट

Question ID : 26433090589  
Status : Answered  
Chosen Option : 3

Q.14 नेताजी सुभाष राष्ट्रीय खेल संस्थान निम्नलिखित में से किस शहर में स्थित है?

- Ans  1. पुणे  
 2. कोच्चि  
 3. पटियाला  
 4. जयपुर

Question ID : 264330116298  
Status : Answered  
Chosen Option : 3

Q.15 मूल अधिकारों की अवधारणा किस देश के संविधान से ली गई है?

- Ans  1. संयुक्त राज्य अमेरिका  
 2. आयरलैंड  
 3. यूनाइटेड किंगडम  
 4. रूस

Question ID : 264330115639  
Status : Not Answered  
Chosen Option : --

Q.16 रक्षाबंधन, भाई और बहन के बीच रिश्ते की भावात्मकता को व्यक्त करने वाला त्यौहार है, 2022 में यह \_\_\_\_\_ के महीने में मनाया गया।

- Ans
- 1. जनवरी
  - 2. अगस्त
  - 3. मई
  - 4. जून

Question ID : 264330115095  
Status : Answered  
Chosen Option : 2

Q.17 \_\_\_\_\_, खुदरा विक्रेताओं के लिए गोदाम में स्टॉक रखते हैं ताकि खुदरा विक्रेताओं को जब भी उनकी आवश्यकता हो, उन्हें सामान उपलब्ध कराया जा सके।

- Ans
- 1. थोक विक्रेता
  - 2. खरीदार
  - 3. ग्राहक
  - 4. विक्रेता

Question ID : 264330115585  
Status : Answered  
Chosen Option : 1

Q.18 राज्य के महाधिवक्ता की नियुक्ति \_\_\_\_\_ द्वारा की जाती है।

- Ans
- 1. भारत के मुख्य न्यायाधीश
  - 2. राज्यपाल
  - 3. राज्य चुनाव आयुक्त
  - 4. मुख्यमंत्री

Question ID : 26433089184  
Status : Answered  
Chosen Option : 1

Q.19 गंगा नदी निम्नलिखित में से किस जल निकाय में जा मिलती है?

- Ans
- 1. प्रशांत महासागर
  - 2. अरब सागर
  - 3. दक्षिण चीन सागर
  - 4. बंगाल की खाड़ी

Question ID : 264330116009  
Status : Answered  
Chosen Option : 1

Q.20 निम्नलिखित में से कौन-सी लोक नृत्य शैली हरियाणा राज्य से संबंधित नहीं है?

- Ans
- 1. रउफ
  - 2. फाग
  - 3. गुग्गा
  - 4. खोरिया

Question ID : 26433086717  
Status : Answered  
Chosen Option : 1

Q.1 एक व्यक्ति ने 8 km की दूरी 4 km/h की चाल से, 12 km की दूरी 3 km/h की चाल से और 18 km की दूरी 2 km/h की चाल से तय की। कुल यात्रा में उसकी औसत चाल क्या है? (दशमलव के दो स्थानों तक लगभग)

- Ans  1. 2.53 km/h  
 2. 3.53 km/h  
 3. 2.83 km/h  
 4. 2.03 km/h

Question ID : 26433090284  
Status : Not Answered  
Chosen Option : --

Q.2 एक कक्षा के सभी साठ छात्र गणित की परीक्षा में शामिल हुए। 25 छात्रों ने 96 औसत अंक प्राप्त किए। शेष छात्रों को 84 औसत अंक मिले। पूरी कक्षा के औसत अंक \_\_\_\_\_ है।

- Ans  1. 89  
 2. 90  
 3. 91  
 4. 92

Question ID : 26433079909  
Status : Answered  
Chosen Option : 1

Q.3 124 m और 116 m लंबी दो ट्रेनें क्रमशः 28 km/h और 44 km/h की चाल से एक-दूसरे की ओर चल रही हैं। मिलने के बाद उन्हें एक-दूसरे को पार करने में कितना समय लगेगा?

- Ans  1. 16 सेकंड  
 2. 12 सेकंड  
 3. 10 सेकंड  
 4. 14 सेकंड

Question ID : 26433075199  
Status : Not Answered  
Chosen Option : --

Q.4 रवि के पास एक केक है, जो 6 cm त्रिज्या के गोले के आकार का है। फिर उसने इसे चॉकलेट में डुबोकर फ्रीजर में रख दिया। कुछ समय बाद उसने देखा कि चॉकलेट ने केक के ऊपर 2 cm मोटी परत बनाई। केक को चॉकलेट में डुबाने के बाद उसके पृष्ठीय क्षेत्रफल में कितने प्रतिशत परिवर्तन होता है?

- Ans  1. 77.78%  
 2. 64.23%  
 3. 47.45%  
 4. 34.89%

Question ID : 26433075328  
Status : Answered  
Chosen Option : 2

Q.5 लता ने Rs.2,160 में दो पंखे खरीदे। एक पंखे को 15% के लाभ पर और दूसरे को 9% की हानि पर बेचने पर, उसे पूरे लेन-देन में न तो लाभ होता है और न ही हानि। प्रत्येक पंखे का क्रय मूल्य ज्ञात करें।

- Ans  1. Rs.640, Rs.1,520  
 2. Rs.1,000, Rs.1,160  
 3. Rs.960, Rs.1,200  
 4. Rs.810, Rs.1,350

Question ID : 26433073123  
Status : Answered  
Chosen Option : 4

Q.6 कुछ वस्तुएं Rs.4,500 में खरीदी जाती हैं। यदि एक तिहाई वस्तुएं 15% की हानि पर बेची गई हैं, तो शेष वस्तुओं को कितने प्रतिशत लाभ पर बेचा जाना चाहिए, ताकि पूरे लेनदेन पर 20% का लाभ प्राप्त हो?

- Ans
- 1. 35%
  - 2. 17.5%
  - 3. 37.5%
  - 4. 27.5%

Question ID : 26433074987  
Status : Not Answered  
Chosen Option : --

Q.7 एक व्यापारी किसी उत्पाद के अंकित मूल्य पर 20% छूट देता है। व्यापारी इस घटे मूल्य पर एक और 36.5% की छूट देता है। दोनों कटौतियाँ, एकल कटौती \_\_\_\_\_ के बराबर है।

- Ans
- 1. 49.2%
  - 2. 43.5%
  - 3. 53.4%
  - 4. 58.6%

Question ID : 26433066310  
Status : Answered  
Chosen Option : 1

Q.8 निम्नलिखित व्यंजक का मान ज्ञात करें।  
 $95 - [144 \div 12 \text{ of } 12 - (-4) - \{3 - 17 - 10\}]$

- Ans
- 1. 78
  - 2. 48
  - 3. 66
  - 4. 92

Question ID : 26433076320  
Status : Answered  
Chosen Option : 3

Q.9 एक मोबाइल फोन Rs.15,500 में खरीदा गया था। इसके मूल्य में 20% प्रति वर्ष की दर से मूल्यहास होता है। दो वर्ष बाद इसका मूल्य ज्ञात कीजिए।

- Ans
- 1. Rs.9920
  - 2. Rs.6200
  - 3. Rs.10200
  - 4. Rs.12400

Question ID : 26433075736  
Status : Answered  
Chosen Option : 2

Q.10 10 प्रतिशत वार्षिक चक्रवृद्धि ब्याज दर से ₹1 लाख का मूलधन 3 वर्ष में बढ़कर कितना (₹ में) हो जाएगा? (ब्याज वार्षिक रूप से चक्रवृद्धि किया जाता है)

- Ans
- 1. ₹1,31,000
  - 2. ₹1,33,100
  - 3. ₹1,21,000
  - 4. ₹1,50,000

Question ID : 26433076012  
Status : Answered  
Chosen Option : 2

Q.11 एक 185 m लंबाई की और दूसरी 175 m लंबाई की, दो रेलगाड़ियाँ समानांतर पटरियों पर विपरीत दिशाओं में दौड़ रही हैं, पहली और दूसरी की चाल क्रमशः 80 km/h और 64 km/h हैं। एक-दूसरे को पार करने में वे कितना समय लेंगी?

- Ans
- 1. 7 सेकंड
  - 2. 9 सेकंड
  - 3. 9.5 सेकंड
  - 4. 8 सेकंड

Question ID : 26433075519  
Status : Not Answered  
Chosen Option : --

Q.12 A और B मिलकर कोई काम 24 दिन में कर सकते हैं। A, B से दोगुना कार्यकुशल है। B अकेले उस काम को कितने दिन में पूरा कर सकता है?

- Ans
- 1. 78
  - 2. 84
  - 3. 72
  - 4. 86

Question ID : 26433079893  
Status : Answered  
Chosen Option : 2

Q.13 M और N मिलकर एक कार्य को 18 दिनों में, N और P 26 दिनों में, और M और P 14 दिनों में पूरा कर सकते हैं। दिनों की अनुमानित संख्या ज्ञात करें, जहाँ सभी एक साथ काम करके कार्य को पूरा करते हैं।

- Ans
- 1. 12 दिन
  - 2. 13 दिन
  - 3. 11 दिन
  - 4. 15 दिन

Question ID : 264330116911  
Status : Answered  
Chosen Option : 2

Q.14 17 से विभाज्य 3 अंकीय सबसे छोटी संख्या और 34 से विभाज्य 2 अंकीय सबसे बड़ी संख्या का लघुत्तम समापवर्त्य ज्ञात करें।

- Ans
- 1. 102
  - 2. 204
  - 3. 408
  - 4. 816

Question ID : 264330116636  
Status : Answered  
Chosen Option : 3

Q.15 यदि H अपनी आय में से  $\frac{1}{3}$  की बचत करता है और ₹15,600 प्रति माह खर्च करता है, तो उसकी प्रति माह बचत की गणना ₹ में करें।

- Ans
- 1. ₹7,800
  - 2. ₹10,400
  - 3. ₹11,700
  - 4. ₹5,200

Question ID : 26433081706  
Status : Answered  
Chosen Option : 2

Q.16 जय के पेटीएम वॉलेट में ₹500 हैं। उसने पहले अपने बैलेंस में 20% और फिर 25% की वृद्धि की। प्रारंभिक बैलेंस की तुलना में बैलेंस में प्रतिशत वृद्धि ज्ञात कीजिए।

- Ans
- 1. 52.5%
  - 2. 50%
  - 3. 55%
  - 4. 47.5%

Question ID : 26433076409  
Status : Answered  
Chosen Option : 2

Q.17 यदि पहली संख्या का 20% दूसरी संख्या के  $\frac{1}{3}$  के बराबर है, तो दूसरी संख्या का पहली संख्या से अनुपात होगा:

- Ans
- 1. 5 : 3
  - 2. 2 : 3
  - 3. 3 : 2
  - 4. 3 : 5

Question ID : 26433082423  
Status : Not Answered  
Chosen Option : --

Q.18 एक शंकु की त्रिज्या और तिर्यक ऊंचाई का अनुपात क्रमशः 5 : 7 है। यदि इसका वक्र पृष्ठीय क्षेत्रफल 1,760

cm<sup>2</sup> है, तो इसकी त्रिज्या ज्ञात करें।  $\pi = \frac{22}{7}$  लें

- Ans
- 1. 24 cm
  - 2. 20 cm
  - 3. 28 cm
  - 4. 21 cm

Question ID : 26433076254  
Status : Not Answered  
Chosen Option : --

Q.19 5, 10 और 17 का चतुर्थानुपाती क्या है?

- Ans
- 1. 51
  - 2. 15
  - 3. 34
  - 4. 43

Question ID : 26433080328  
Status : Answered  
Chosen Option : 3

Q.20 एकल छूट, जो 20%, 22% और 25% की तीन क्रमिक छूटों के बराबर है, \_\_\_\_\_ है।

- Ans
- 1.  $\frac{234}{5}\%$
  - 2.  $\frac{267}{5}\%$
  - 3.  $\frac{233}{5}\%$
  - 4.  $\frac{266}{5}\%$

Question ID : 26433090288  
Status : Answered  
Chosen Option : 1

Section : Part-D-English

Q.1 Select the most appropriate option to fill in the blank.  
He decided not to go for the picnic as he was feeling a little \_\_\_\_\_.

- Ans
- 1. as right as rain
  - 2. under the weather
  - 3. head in the clouds
  - 4. calm before the storm

Question ID : 26433084652  
Status : Not Answered  
Chosen Option : --



**Q.2** Select the most appropriate option that can substitute the underlined segment in the given sentence. If there is no need to substitute it, select 'No substitution'.

I am born in the United States, yet I consider myself Indian.

- Ans**  1. I was born in the United States,  
 2. No substitution  
 3. I was born at the United States,  
 4. I was born in United States,

Question ID : 264330101020  
Status : Not Answered  
Chosen Option : --

**Q.3** Select the most appropriate ANTONYM of the given word.

**Sluggish**

- Ans**  1. Flatter  
 2. Humiliate  
 3. Active  
 4. Lethargic

Question ID : 26433090791  
Status : Not Answered  
Chosen Option : --

**Q.4** Select the most appropriate option to fill in the blank.

He received a \_\_\_\_\_ during the ceremony.

- Ans**  1. metal  
 2. medal  
 3. meddle  
 4. mettle

Question ID : 26433084714  
Status : Not Answered  
Chosen Option : --

**Q.5** Select the most appropriate antonym of the given word.

**Betray**

- Ans**  1. Disloyal  
 2. Sympathy  
 3. Adverse  
 4. Protect

Question ID : 26433072356  
Status : Not Answered  
Chosen Option : --

**Q.6** Select the most appropriate meaning of the given idiom.  
**Spick and span**

- Ans**  1. To leave a place quickly  
 2. To be in trouble  
 3. To be neat and clean  
 4. To be untidy

Question ID : 26433086378  
Status : Not Answered  
Chosen Option : --

Q.7 Select the most appropriate meaning of the given idiom.

Blaze the trail

- Ans  1. To be defeated  
 2. To receive fame  
 3. To cause a damage  
 4. Be first to do something important

Question ID : 26433074058  
Status : Not Answered  
Chosen Option : --

Q.8 Select the most appropriate synonym of the capitalised word in the given sentence.

I had the PRIVILEGE of meeting the magistrate.

- Ans  1. Recommendation  
 2. Guidance  
 3. Honour  
 4. Atrocity

Question ID : 26433088207  
Status : Not Answered  
Chosen Option : --

Q.9 Identify the correctly spelt sentence.

- Ans  1. Celastial objects are not visible to the naked eye.  
 2. Kelestial objects are not visible to the naked eye.  
 3. Celesteal objects are not visible to the naked eye.  
 4. Celestial objects are not visible to the naked eye.

Question ID : 26433072839  
Status : Not Answered  
Chosen Option : --

Q.10 The following sentence has been split into four segments. Identify the segment that contains an error.

Nyra have/ been taking / dance classes / this year.

- Ans  1. dance classes  
 2. been taking  
 3. Nyra have  
 4. this year

Question ID : 26433088297  
Status : Not Answered  
Chosen Option : --

Q.11 Select the most appropriate synonym of the given word.

Cherish

- Ans  1. Condemn  
 2. Abandon  
 3. Neglect  
 4. Admire

Question ID : 26433073685  
Status : Not Answered  
Chosen Option : --

Q.12 Select the most appropriate synonym of the underlined word in the given sentence.

I was startled by his entry into the hall.

- Ans
- 1. glad
  - 2. cherished
  - 3. frightened
  - 4. miserable

Question ID : 26433092104  
Status : Not Answered  
Chosen Option : --

Q.13 Select the most appropriate option that can substitute the underlined segment in the given sentence.

The objective of Robotics are to interrogate smart machines that can help people in a variety of ways.

- Ans
- 1. is to develop
  - 2. is to bully
  - 3. are to facilitate
  - 4. are to levitate

Question ID : 26433089798  
Status : Not Answered  
Chosen Option : --

Q.14 The sentence given below has one misspelt word. Spot the INCORRECTLY spelt word and select its correct spelling.

A trimphant smile appeared on his face.

- Ans
- 1. Trimpant
  - 2. Triumphant
  - 3. Triumpant
  - 4. Tremphant

Question ID : 26433073560  
Status : Not Answered  
Chosen Option : --

Q.15 Select the correct word for the blanks in the given sentence.

He \_\_\_\_\_ to success after winning a lottery and \_\_\_\_\_ is everyone's favourite flower.

- Ans
- 1. got
  - 2. rise
  - 3. zenith
  - 4. rose

Question ID : 26433060541  
Status : Not Answered  
Chosen Option : --

**Comprehension:**

In the following passage, some words have been deleted. Read the passage carefully and select the most appropriate option to fill in each blank.

It is often said that (1) \_\_\_\_\_ you want a pet to look up to you, get a dog. If you want a pet that looks straight (2) \_\_\_\_\_ you, get a horse. For an animal that looks down (3) \_\_\_\_\_ you, the cat must surely (4) \_\_\_\_\_ this description.

Cats are their own bosses. They have little or no regard for anyone or anything. If you have (5) \_\_\_\_\_ looked closely at the cat, you will observe that it looks at you from the corner of its eyes, almost condescendingly.

**SubQuestion No : 16**

**Q.16 Select the most appropriate option to fill in blank number 1.**

- Ans  1. whenever  
 2. whether  
 3. ever  
 4. if

Question ID : 26433072453  
Status : Not Answered  
Chosen Option : --

**Comprehension:**

In the following passage, some words have been deleted. Read the passage carefully and select the most appropriate option to fill in each blank.

It is often said that (1) \_\_\_\_\_ you want a pet to look up to you, get a dog. If you want a pet that looks straight (2) \_\_\_\_\_ you, get a horse. For an animal that looks down (3) \_\_\_\_\_ you, the cat must surely (4) \_\_\_\_\_ this description.

Cats are their own bosses. They have little or no regard for anyone or anything. If you have (5) \_\_\_\_\_ looked closely at the cat, you will observe that it looks at you from the corner of its eyes, almost condescendingly.

**SubQuestion No : 17**

**Q.17 Select the most appropriate option to fill in blank number 2.**

- Ans  1. by  
 2. to  
 3. at  
 4. over

Question ID : 26433072454  
Status : Not Answered  
Chosen Option : --

**Comprehension:**

In the following passage, some words have been deleted. Read the passage carefully and select the most appropriate option to fill in each blank.

It is often said that (1) \_\_\_\_\_ you want a pet to look up to you, get a dog. If you want a pet that looks straight (2) \_\_\_\_\_ you, get a horse. For an animal that looks down (3) \_\_\_\_\_ you, the cat must surely (4) \_\_\_\_\_ this description.

Cats are their own bosses. They have little or no regard for anyone or anything. If you have (5) \_\_\_\_\_ looked closely at the cat, you will observe that it looks at you from the corner of its eyes, almost condescendingly.

**SubQuestion No : 18**

**Q.18 Select the most appropriate option to fill in blank number 3.**

- Ans  1. on  
 2. with  
 3. at  
 4. in

Question ID : 26433072455  
Status : Not Answered  
Chosen Option : --

**Comprehension:**

In the following passage, some words have been deleted. Read the passage carefully and select the most appropriate option to fill in each blank.

It is often said that (1) \_\_\_\_\_ you want a pet to look up to you, get a dog. If you want a pet that looks straight (2) \_\_\_\_\_ you, get a horse. For an animal that looks down (3) \_\_\_\_\_ you, the cat must surely (4) \_\_\_\_\_ this description.

Cats are their own bosses. They have little or no regard for anyone or anything. If you have (5) \_\_\_\_\_ looked closely at the cat, you will observe that it looks at you from the corner of its eyes, almost condescendingly.

**SubQuestion No : 19**

**Q.19** Select the most appropriate option to fill in blank number 4.

**Ans** ✓ 1. fit

✗ 2. find

✗ 3. mist

✗ 4. feat

Question ID : 26433072456

Status : Not Answered

Chosen Option : --

**Comprehension:**

In the following passage, some words have been deleted. Read the passage carefully and select the most appropriate option to fill in each blank.

It is often said that (1) \_\_\_\_\_ you want a pet to look up to you, get a dog. If you want a pet that looks straight (2) \_\_\_\_\_ you, get a horse. For an animal that looks down (3) \_\_\_\_\_ you, the cat must surely (4) \_\_\_\_\_ this description.

Cats are their own bosses. They have little or no regard for anyone or anything. If you have (5) \_\_\_\_\_ looked closely at the cat, you will observe that it looks at you from the corner of its eyes, almost condescendingly.

**SubQuestion No : 20**

**Q.20** Select the most appropriate option to fill in blank number 5.

**Ans** ✓ 1. ever

✗ 2. never

✗ 3. sometime

✗ 4. whenever

Question ID : 26433072457

Status : Not Answered

Chosen Option : --

**Section : Part-D-Hindi**

**Q.1** 'वायु' के एकार्थी शब्द से निम्न वाक्य की पूर्ति कीजिए।  
सारे विशाल पेड़ \_\_\_\_\_ से गिर पड़े।

**Ans** ✓ 1. प्रभञ्जन

✗ 2. धूप

✗ 3. भूकंप

✗ 4. वर्षा

Question ID : 26433063081

Status : Answered

Chosen Option : 1

Q.2 'जिसे पान करने से अमर हो जाए'  
ऊपर दिए गए वाक्यांश के लिए एक शब्द क्या होगा?

- Ans  1. अमृत  
 2. अनिल  
 3. सलिल  
 4. अखाद्य

Question ID : 26433070054  
Status : Answered  
Chosen Option : 1

Q.3 निम्नलिखित में से शुद्ध वाक्य है-

- Ans  1. अब तुम मैं को बेवकूफ नहीं बना सकते।  
 2. अब तुम मुझे बेवकूफ नहीं बना सकते।  
 3. अब तुम मुझे बेवकूफ नहीं बना सकते।  
 4. अब तुम मुझको बेवकूफ ना बना सकते।

Question ID : 26433066845  
Status : Answered  
Chosen Option : 2

Q.4 झूठ बोलना पाप है।

उपरोक्त वाक्य में रेखांकित पद बदलकर लिखिए।

- Ans  1. दूसरों को हानि पहुँचाना  
 2. मनुष्य को न मारना  
 3. सच बोलना  
 4. फूल बिछाना

Question ID : 26433062694  
Status : Answered  
Chosen Option : 1

Q.5 निम्न वाक्य में रेखांकित अंश के स्थान पर सबसे उपयुक्त विकल्प कौन-सा होगा?  
बात-बात में इस तरह झगड़ना-लड़ना ठीक नहीं है।

- Ans  1. लड़ना-मरना  
 2. मरना-लड़ना  
 3. झगड़ना-मारना  
 4. लड़ना-झगड़ना

Question ID : 26433066873  
Status : Answered  
Chosen Option : 4

Q.6 नीचे दिए गये वाक्यांश के लिए सार्थक शब्द बताइए-  
'रात और संध्या के बीच का समय'

- Ans  1. बेला  
 2. अस्ताचल  
 3. गोधूलि  
 4. सायंकाल

Question ID : 26433062594  
Status : Answered  
Chosen Option : 2

Q.7 निम्नलिखित विकल्पों में से 'उल्लू सीधा करना' मुहावरे का अर्थ क्या है?

- Ans  1. स्वार्थ सिद्ध करना  
 2. सबकी मदद करना  
 3. सबको साथ लेकर चलना  
 4. निरर्थक साबित होना

Question ID : 26433062549  
Status : Answered  
Chosen Option : 1

Q.8 निम्न मुहावरे को पूर्ण कीजिए।  
हाथ की \_\_\_\_\_ बनना

- Ans  1. कठ-जामुन  
 2. कठ-मांड़  
 3. कठ-पुतली  
 4. कठ-गुलाब

Question ID : 26433062817  
Status : Answered  
Chosen Option : 3

Q.9 निम्नलिखित में से शुद्ध वाक्य कौन-सा है?

- Ans  1. भगत सिंह का राष्ट्र आभारी है।  
 2. आकाश जानता है कि शायद उसका मित्र सो रहा है।  
 3. उसका सौन्दर्य कभी कम न होगा।  
 4. गाय का ताकतवर दूध होता है।

Question ID : 26433066992  
Status : Answered  
Chosen Option : 1

Q.10 निम्न में से किस वाक्य में 'खल' के सही पर्यायवाची शब्द का प्रयोग हुआ है?

- Ans  1. नयन अत्यंत दुष्ट है।  
 2. किसान बहुत परिश्रम करते हैं।  
 3. समुद्र का तट अत्यंत विस्तृत है।  
 4. उस पर खूनी हमला हुआ।

Question ID : 26433067018  
Status : Answered  
Chosen Option : 3

Q.11 ' \_\_\_\_\_ उत्पादक और उपभोक्ता को सम्पर्क में लाता है।'  
उपरोक्त वाक्य में रिक्त स्थान की पूर्ति निम्न में से उपयुक्त शब्द द्वारा कीजिए।

- Ans  1. निर्देशक  
 2. डाकिया  
 3. मुखिया  
 4. विज्ञापन

Question ID : 26433080899  
Status : Answered  
Chosen Option : 4

Q.12 विकल्पों में दिए गए समानार्थी शब्दों में से निम्न वाक्य के लिए सर्वोचित शब्द का प्रयोग करके रिक्त स्थान की पूर्ति कीजिए।

पांडु पुत्र अर्जुन \_\_\_\_\_ निशानेबाज़ वीर था।

- Ans
- 1. अनुपम
  - 2. अद्वितीय
  - 3. अनोखा
  - 4. अनूठा

Question ID : 26433062932  
Status : Answered  
Chosen Option : 2

Q.13 दिए गए विकल्पों में से कौन सा शब्द, निम्नलिखित वाक्य में रेखांकित शब्द का पर्यायवाची नहीं है।  
मदमस्त हाथी अपनी ही धुन में चलते हैं।

- Ans
- 1. कुंजर
  - 2. हाथ
  - 3. गज
  - 4. हस्ति

Question ID : 26433091336  
Status : Answered  
Chosen Option : 2

Q.14 कर्म के आधार पर क्रिया के दो भेद हैं-

- Ans
- 1. अकर्मक, सकर्मक
  - 2. सजातीय, विजातीय
  - 3. एककर्मक, द्विकर्मक
  - 4. गुणवाचक, सर्वनामिक

Question ID : 26433085041  
Status : Answered  
Chosen Option : 1

Q.15 निम्नलिखित में से कौन-सा वाक्य संज्ञा के प्रयोग की दृष्टि से शुद्ध है?

- Ans
- 1. वृद्धता मानव जीवन के विकास का अंतिम चरण है।
  - 2. वार्धक्य मानव जीवन के विकास का अंतिम चरण है।
  - 3. वृद्धमान मानव जीवन के विकास का अंतिम चरण है।
  - 4. वृद्ध मानव जीवन के विकास का अंतिम चरण है।

Question ID : 26433066956  
Status : Answered  
Chosen Option : 1



**Comprehension:**

निम्नलिखित गद्यांश में कुछ शब्दों को हटा दिया गया है। दिए गए विकल्पों की सहायता से रिक्त स्थानों की पूर्ति कीजिए। प्रत्येक संख्या के लिए सबसे उपयुक्त विकल्प का चयन कीजिए।  
मानव जीवन सुख और दुःख का मिला-जुला 1. \_\_\_\_\_ होता है। मनुष्य जीवन भर संघर्ष करता है। बचपन से लेकर वृद्धावस्था तक यदि वह 2. \_\_\_\_\_ रहेगा तो उसका जीवन नीरस हो जाएगा। जीवन को सरस बनाने के लिए 3. \_\_\_\_\_ के विभिन्न साधनों की आवश्यकता होती है। वैसे भी मनोरंजन मनुष्य की 4. \_\_\_\_\_ प्रवृत्ति है। सच पूछा जाए तो मनोरंजन के बिना जीवन 5. \_\_\_\_\_ है।

**SubQuestion No : 16****Q.16 रिक्त स्थान 1 की पूर्ति के लिए सबसे उपयुक्त विकल्प का चयन कीजिए।**

- Ans  1. स्थान  
 2. रूप  
 3. कार्य  
 4. साधन

Question ID : 264330111011  
Status : Answered  
Chosen Option : 2

**Comprehension:**

निम्नलिखित गद्यांश में कुछ शब्दों को हटा दिया गया है। दिए गए विकल्पों की सहायता से रिक्त स्थानों की पूर्ति कीजिए। प्रत्येक संख्या के लिए सबसे उपयुक्त विकल्प का चयन कीजिए।  
मानव जीवन सुख और दुःख का मिला-जुला 1. \_\_\_\_\_ होता है। मनुष्य जीवन भर संघर्ष करता है। बचपन से लेकर वृद्धावस्था तक यदि वह 2. \_\_\_\_\_ रहेगा तो उसका जीवन नीरस हो जाएगा। जीवन को सरस बनाने के लिए 3. \_\_\_\_\_ के विभिन्न साधनों की आवश्यकता होती है। वैसे भी मनोरंजन मनुष्य की 4. \_\_\_\_\_ प्रवृत्ति है। सच पूछा जाए तो मनोरंजन के बिना जीवन 5. \_\_\_\_\_ है।

**SubQuestion No : 17****Q.17 रिक्त स्थान 2 की पूर्ति के लिए सबसे उपयुक्त विकल्प का चयन कीजिए।**

- Ans  1. संघर्षशील  
 2. प्रचलित  
 3. प्रभावित  
 4. मिलनसार

Question ID : 264330111012  
Status : Answered  
Chosen Option : 1

**Comprehension:**

निम्नलिखित गद्यांश में कुछ शब्दों को हटा दिया गया है। दिए गए विकल्पों की सहायता से रिक्त स्थानों की पूर्ति कीजिए। प्रत्येक संख्या के लिए सबसे उपयुक्त विकल्प का चयन कीजिए।  
मानव जीवन सुख और दुःख का मिला-जुला 1. \_\_\_\_\_ होता है। मनुष्य जीवन भर संघर्ष करता है। बचपन से लेकर वृद्धावस्था तक यदि वह 2. \_\_\_\_\_ रहेगा तो उसका जीवन नीरस हो जाएगा। जीवन को सरस बनाने के लिए 3. \_\_\_\_\_ के विभिन्न साधनों की आवश्यकता होती है। वैसे भी मनोरंजन मनुष्य की 4. \_\_\_\_\_ प्रवृत्ति है। सच पूछा जाए तो मनोरंजन के बिना जीवन 5. \_\_\_\_\_ है।

**SubQuestion No : 18****Q.18 रिक्त स्थान 3 की पूर्ति के लिए सबसे उपयुक्त विकल्प का चयन कीजिए।**

- Ans  1. परिवार  
 2. मनोरंजन  
 3. कार्य  
 4. आकर्षण

Question ID : 264330111013  
Status : Answered  
Chosen Option : 2

**Comprehension:**

निम्नलिखित गद्यांश में कुछ शब्दों को हटा दिया गया है। दिए गए विकल्पों की सहायता से रिक्त स्थानों की पूर्ति कीजिए। प्रत्येक संख्या के लिए सबसे उपयुक्त विकल्प का चयन कीजिए।  
मानव जीवन सुख और दुःख का मिला-जुला 1. \_\_\_\_\_ होता है। मनुष्य जीवन भर संघर्ष करता है। बचपन से लेकर वृद्धावस्था तक यदि वह 2. \_\_\_\_\_ रहेगा तो उसका जीवन नीरस हो जाएगा। जीवन को सरस बनाने के लिए 3. \_\_\_\_\_ के विभिन्न साधनों की आवश्यकता होती है। वैसे भी मनोरंजन मनुष्य की 4. \_\_\_\_\_ प्रवृत्ति है। सच पूछा जाए तो मनोरंजन के बिना जीवन 5. \_\_\_\_\_ है।

**SubQuestion No : 19**

Q.19 रिक्त स्थान 4 की पूर्ति के लिए सबसे उपयुक्त विकल्प का चयन कीजिए।

- Ans  1. बड़ी  
 2. स्वाभाविक  
 3. मध्यम  
 4. अप्रत्यक्ष

Question ID : 264330111014  
Status : Answered  
Chosen Option : 2

**Comprehension:**

निम्नलिखित गद्यांश में कुछ शब्दों को हटा दिया गया है। दिए गए विकल्पों की सहायता से रिक्त स्थानों की पूर्ति कीजिए। प्रत्येक संख्या के लिए सबसे उपयुक्त विकल्प का चयन कीजिए।  
मानव जीवन सुख और दुःख का मिला-जुला 1. \_\_\_\_\_ होता है। मनुष्य जीवन भर संघर्ष करता है। बचपन से लेकर वृद्धावस्था तक यदि वह 2. \_\_\_\_\_ रहेगा तो उसका जीवन नीरस हो जाएगा। जीवन को सरस बनाने के लिए 3. \_\_\_\_\_ के विभिन्न साधनों की आवश्यकता होती है। वैसे भी मनोरंजन मनुष्य की 4. \_\_\_\_\_ प्रवृत्ति है। सच पूछा जाए तो मनोरंजन के बिना जीवन 5. \_\_\_\_\_ है।

**SubQuestion No : 20**

Q.20 रिक्त स्थान 5 की पूर्ति के लिए सबसे उपयुक्त विकल्प का चयन कीजिए।

- Ans  1. वर्चस्व  
 2. पूरा  
 3. उचित  
 4. अधूरा

Question ID : 264330111015  
Status : Answered  
Chosen Option : 4

# Constable GD in CAPFs SSF Rifleman GD in Assam Rifles and Sepoy in NCB Examination 2022

Roll Number	KD Job Updates
Candidate Name	KD Job Updates
Venue Name	Institute of Hardware Networking And Communication Center Sarnath
Exam Date	02/02/2023
Exam Time	2:30 PM - 3:30 PM
Subject	Constable GD Examination 2022

## Section : Part-A-General Intelligence and Reasoning

Q.1 In a certain code language, 'BREAD is written as 'BED19', 'IRONY' is written as 'IOY32', how will 'SHARP' be written as in that language?

- Ans
- 1. SAP26
  - 2. 26SAP
  - 3. SHA26
  - 4. SAP62

Question ID : 26433069647  
Status : Answered  
Chosen Option : 1

Q.2 Which option represents the correct order of the given words as they would appear in the English dictionary?

1. micro
2. minute
3. miles
4. mimic
5. miniature

- Ans
- 1. 1,5,2,4,3
  - 2. 1,4,5,3,2
  - 3. 1,3,4,5,2
  - 4. 1,4,3,5,2

Question ID : 26433069293  
Status : Answered  
Chosen Option : 3

Q.3 Which of the following numbers will replace the question mark (?) in the given series?  
89, 214, ?, 773, 1285, 2014

- Ans
- 1. 422
  - 2. 342
  - 3. 430
  - 4. 446

Question ID : 26433076743  
Status : Answered  
Chosen Option : 3

Q.4 Which letter-cluster will replace the question mark (?) to complete the given series?  
ZYXW, STUV, RQPO, ?, JIHG, CDEF

- Ans
- 1. NMLK
  - 2. KLMN
  - 3. JIHG
  - 4. LKMN

Question ID : 26433067721

Status : Not Answered

Chosen Option : --

Q.5 A @ B का अर्थ है 'A, B का पति है'।  
A & B का अर्थ है 'A, B की पुत्री है'।  
A # B का अर्थ है 'A, B का पिता है'।  
A % B का अर्थ है 'A, B का सहोदर है'।  
यदि H @ K % M # P & S है, तो S, K से किस प्रकार संबंधित है?

- Ans
- 1. भाई
  - 2. बहन
  - 3. पिता
  - 4. भाभी

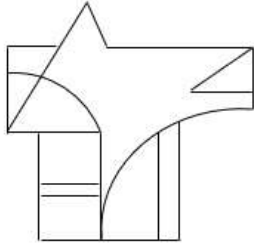
Question ID : 26433069620

Status : Answered

Chosen Option : 4

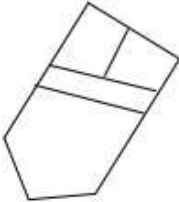
KD Job Updates

Q.6 Select the option figure which is embedded in the given figure. (Rotation is NOT allowed)

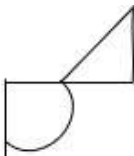


Ans

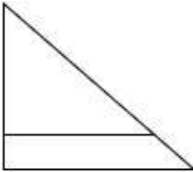
✗ 1.




✗ 2.



✗ 3.



✓ 4.



KD Job Updates

Question ID : 26433069355

Status : Answered

Chosen Option : 4

**Q.7** Three statements are given, followed by three conclusions numbered I, II and III. Assuming the statements to be true, even if they seem to be at variance with commonly known facts, decide which of the conclusions logically follow(s) from the statements.

**Statements:**

All trees are walls.

No wall is a door.

Some doors are rooms.

**Conclusions:**

I. Some rooms are walls.

II. No trees are doors.

III. All walls are trees.

- Ans**
- 1. Only conclusions I and III follow
  - 2. All conclusions follow
  - 3. Only conclusions II and III follow
  - 4. Only conclusion II follows

Question ID : 26433090989

Status : Answered

Chosen Option : 4

**Q.8** Select the option that is related to the third word in the same way as the second word is related to the first word. (The words must be considered as meaningful English words and must not be related to each other based on the number of letters/number of consonants/vowels in the word.)

Doctor : Hospital :: Engineer : ?

- Ans**
- 1. Court
  - 2. Construct
  - 3. School
  - 4. Site

Question ID : 26433067855

Status : Answered

Chosen Option : 2

**Q.9** Seven people I, J, K, L, M, N and O, are sitting in a straight row, facing the north. Only five people sit to the left of M. J sits third to the left of O. O is not an immediate neighbour of M. K sits to the immediate right of N. I sits fourth to the right of J. Who sits at the extreme right end of the row?

- Ans**
- 1. L
  - 2. K
  - 3. O
  - 4. I

Question ID : 26433076526

Status : Answered

Chosen Option : 1

Q.10 Select the option that is related to the fifth number in the same way as the second number is related to the first number and the fourth number is related to the third number.

31 : 14 :: 23 : 10 :: 39 : ?

- Ans
- 1. 22
  - 2. 20
  - 3. 18
  - 4. 19

Question ID : 26433069428  
Status : Answered  
Chosen Option : 3

Q.11 Six students are sitting around a circular table facing the centre. Ken is sitting to the immediate right of Joe. Joe is sitting third to the left of Ben. Kat is sitting to the immediate right of Ben. Jen is the immediate neighbour of Ben and Ken. Who is the immediate neighbour of Ken and Mel?

- Ans
- 1. Jen
  - 2. Ben
  - 3. Joe
  - 4. Kat

Question ID : 26433081770  
Status : Answered  
Chosen Option : 3

Q.12 Select the letter-cluster from among the given options that can replace the question mark (?) in the following series.  
RXUT, VVYX, ZTCB, ?, HPKJ

- Ans
- 1. DRGF
  - 2. FDNT
  - 3. DGFR
  - 4. FQCU

Question ID : 26433074739  
Status : Answered  
Chosen Option : 1

Q.13 Which two numbers(not digits), from the given options, should be interchanged to make the given equation correct?  
 $(48 \div 3 + 6) \div 11 = 81 - 27 \div 3 \times 5$

- Ans
- 1. 48 and 81
  - 2. 5 and 6
  - 3. 81 and 27
  - 4. 11 and 5

Question ID : 26433082483  
Status : Not Answered  
Chosen Option : --

Q.14 In a certain code language, 'CHURCH' is written as 'FKXUFK' and 'MUMBAI' is written as 'XPEDL'. How will 'TEMPLE' be written in that language?

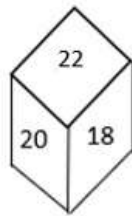
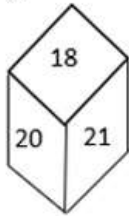
- Ans
- 1. WHPSHO
  - 2. WHPOSH
  - 3. WHSPOH
  - 4. WHPSOH

Question ID : 26433080468

Status : Answered

Chosen Option : 4

Q.15 Two different positions of the same dice are shown. Find the number on the face opposite the face showing '21'.



- Ans
- 1. 20
  - 2. 24
  - 3. 19
  - 4. 22

Question ID : 26433089507

Status : Answered

Chosen Option : 1

KD Job Updates




Q.16 Which of the following figures is the exact mirror image of the given problem figure when the mirror is held at the right side?

Problem figure:



Ans

✓ 1.




✗ 2.



✗ 3.



✗ 4.



Question ID : 26433087090

Status : Answered

Chosen Option : 1

Q.17 Which two signs should be interchanged to make the below equation mathematically correct?

$$60 \div 3 \times 20 - 15 + 12 = 6$$

- Ans
- 1.  $\times$  and  $-$
  - 2.  $-$  and  $+$
  - 3.  $\div$  and  $\times$
  - 4.  $\div$  and  $-$

Question ID : 264330117511

Status : Answered

Chosen Option : 3

Q.18 उस विकल्प का चयन कीजिए जो तीसरे शब्द से उसी प्रकार संबंधित है, जिस प्रकार दूसरा शब्द पहले शब्द से संबंधित है। (शब्दों को अर्थपूर्ण शब्दों के रूप में माना जाना चाहिए और शब्द में अक्षरों/व्यंजनों/स्वरों की संख्या के आधार पर एक दूसरे से संबंधित नहीं किया जाना चाहिए)  
सिंह : गुफा :: राजा : \_\_\_\_\_

- Ans
- 1. जाला
  - 2. महल
  - 3. नौकर
  - 4. खरगोश

Question ID : 26433078831

Status : Answered

Chosen Option : 2

Q.19 Which of the following numbers will replace the question mark (?) in the given series?  
11, 35, 69, 209, 417, ?

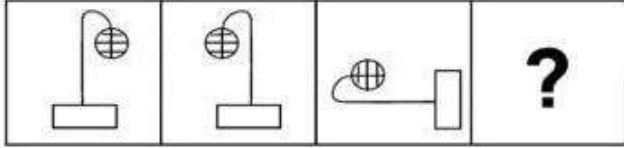
- Ans
- 1. 1152
  - 2. 1125
  - 3. 1253
  - 4. 1521

Question ID : 26433069118

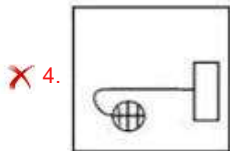
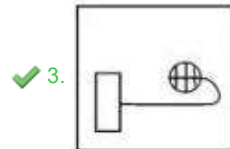
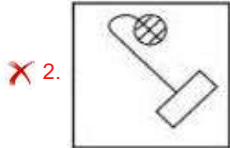
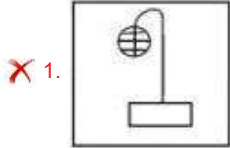
Status : Not Answered

Chosen Option : --

**Q.20** Find the options which is related to the third figure in the same manner as second figure is related with the first figure.  
(First figure is the leftmost figure.)



Ans



Question ID : 26433078860  
Status : Answered  
Chosen Option : 3

Section : Part-B-General Knowledge and General awareness

**Q.1** Which of the following award is not awarded on the National sports Day?

- Ans
- ✗ 1. Arjuna Award
  - ✗ 2. Dronacharya Award
  - ✓ 3. Paramveer Chakra
  - ✗ 4. Dhyan Chand Award

Question ID : 264330116303  
Status : Answered  
Chosen Option : 3

**Q.2** दशहरा, जो रावण पर भगवान राम की विजय का प्रतीक है, हिंदू माह \_\_\_\_\_ में मनाया जाता है।

- Ans
- ✓ 1. अश्विन
  - ✗ 2. कार्तिक
  - ✗ 3. फाल्गुन
  - ✗ 4. चैत्र

Question ID : 264330115100  
Status : Answered  
Chosen Option : 1

**Q.3 In which year was the Minimum Wages Act introduced in India?**

Ans  1. 1950

2. 1948

3. 1951

4. 1949

Question ID : 264330116084

Status : **Not Answered**

Chosen Option : --

**Q.4 Which of the following dancers is related with Kathakali?**

Ans  1. Darshana Jhaveri

2. Shovana Narayan

3. Vempati Chinna Satyam

4. Kunchu Kurup

Question ID : 264330115886

Status : **Answered**

Chosen Option : 2

**Q.5 The Criminal Procedure \_\_\_\_\_, allows police officers or prison officers to collect certain identifiable information (such as fingerprints, biological samples) from convicts or those who have been arrested for an offence.**

Ans  1. Samples Act, 2022

2. Punishment Act, 2022

3. Marks Act, 2021

4. Identification Act, 2022

Question ID : 264330116232

Status : **Not Answered**

Chosen Option : --

**Q.6 In which year was the term 'secular' added to the Preamble of the Indian Constitution?**

Ans  1. 1976

2. 1970

3. 1972

4. 1974

Question ID : 26433090662

Status : **Answered**

Chosen Option : 3

Q.7 Blossom shower is common in \_\_\_\_\_.

- Ans  1. Kerala  
 2. West Bengal  
 3. Assam  
 4. Uttar Pradesh

Question ID : 26433089658  
Status : Answered  
Chosen Option : 3

Q.8 What is the chemical name of baking soda?

- Ans  1. Calcium sulphate hemihydrate  
 2. Sodium hydrogencarbonate  
 3. Calcium sulphate  
 4. Sodium carbonate

Question ID : 264330115198  
Status : Answered  
Chosen Option : 4

Q.9 \_\_\_\_\_ provides supporting services in the main areas of industrial and agricultural production, domestic and foreign trade and commerce.

- Ans  1. Education  
 2. Communication  
 3. Trade  
 4. Infrastructure

Question ID : 264330115545  
Status : Answered  
Chosen Option : 3

Q.10 जमींदारी संघ को लोकप्रिय रूप से किस नाम से जाना जाता था?

- Ans  1. लैंडहोल्डर्स सोसाइटी  
 2. टैनेट सोसाइटी  
 3. पीजेंट सोसाइटी  
 4. फार्मर्स सोसाइटी

Question ID : 264330115693  
Status : Answered  
Chosen Option : 4

Q.11 A reaction in which reactants combine to form products and again products recombine to form reactants is called \_\_\_\_\_ reaction.

- Ans
- 1. irreversible
  - 2. redox
  - 3. reversible
  - 4. displacement

Question ID : 264330115159  
Status : Not Answered  
Chosen Option : --

Q.12 Which House of the States participate(s) in the election of the President of India?

- Ans
- 1. Legislative Assembly
  - 2. Neither Legislative Assembly and Legislative Council
  - 3. Legislative Council
  - 4. Both, Legislative Assembly and Legislative Council

Question ID : 26433074851  
Status : Answered  
Chosen Option : 1

Q.13 In which of the following year did Australia Host the Commonwealth Games?

- Ans
- 1. 2014
  - 2. 2018
  - 3. 1998
  - 4. 2002

Question ID : 264330115919  
Status : Not Answered  
Chosen Option : --

Q.14 निम्नलिखित में से कौन-सी नृत्य शैली एडक्का संगीत वाद्ययंत्र से संबंधित है?

- Ans
- 1. मणिपुरी
  - 2. ओडिसी
  - 3. कथक
  - 4. मोहिनीअट्टम

Question ID : 26433086710  
Status : Answered  
Chosen Option : 2

**Q.15 Which of the following is NOT a component of the Green Revolution?**

- Ans  1. Multiple cropping pattern  
 2. Application of fertilisers and chemicals  
 3. Minimum support price  
 4. High yielding variety seeds

Question ID : 26433054629  
Status : Answered  
Chosen Option : 3

**Q.16 Who among the following became Member of Legislative Assembly from Mokama, Bihar in India, in November 2022?**

- Ans  1. Tejashwi Yadav  
 2. Neelam Devi  
 3. Mohan Kumar Gupta  
 4. Anandiben Patel

Question ID : 264330114924  
Status : Answered  
Chosen Option : 2

**Q.17 International trade agreements have \_\_\_\_\_ as parties.**

- Ans  1. two or more states  
 2. two different cities  
 3. two or more countries  
 4. two or more provinces

Question ID : 264330115388  
Status : Answered  
Chosen Option : 3

**Q.18 Who has been elected as the Chairperson of the Audit Bureau of Circulations (ABC) for 2022-2023?**

- Ans  1. Madhukar Kamath  
 2. Pratap Pawar  
 3. Ashish Agarwal  
 4. Devendra Vijay Darda

Question ID : 264330115001  
Status : Not Answered  
Chosen Option : --

Q.19 बुद्ध शाक्य गण नामक एक छोटे गण से संबंधित थे, और एक \_\_\_\_\_ थे।

- Ans  1. शूद्र  
 2. वैश्य  
 3. ब्रह्म  
 4. क्षत्रिय

Question ID : 26433089854  
Status : Answered  
Chosen Option : 3

Q.20 In \_\_\_\_\_, a crisis in the balance of payments led to the introduction of economic reforms in India.

- Ans  1. 1997  
 2. 1991  
 3. 2001  
 4. 1981

Question ID : 264330115298  
Status : Not Answered  
Chosen Option : --

Section : Part-C-Elementary Mathematics

Q.1 A shopkeeper offers a pen free on buying every dozen pens. Calculate % discount offered by the shopkeeper. Cost price of all the pens is same.( rounded off to one decimal place)

- Ans  1. 8.3 Percent  
 2. 12.5 Percent  
 3. 6.3 Percent  
 4. 7.6 Percent

Question ID : 26433081572  
Status : Answered  
Chosen Option : 1

Q.2 Two trains start at the same time from Bangalore and Chennai and proceed towards each other at the speeds of 80 km/h and 95 km/h. When they meet, it is found that one train has travelled 180 km more than the other. The distance between Bangalore and Chennai is:

- Ans  1. 345 km  
 2. 400 km  
 3. 1200 km  
 4. 2100 km

Question ID : 26433075888  
Status : Not Answered  
Chosen Option : --



Q.3 M, N, and O can do work in 22, 24, and 16 days respectively. If they work for a day alternately such that M works on the first day, N works on the second day, O works on the third day and then again M works on the fourth day and so on, then in how many days approximately, the work will be completed?

- Ans
- 1. 17 days
  - 2. 20 days
  - 3. 16 days
  - 4. 19 days

Question ID : 264330116916  
Status : Answered  
Chosen Option : 1

Q.4 Abhi has a solid sphere of diameter 10 cm. He cuts it into two equal halves and decides to paint it. The painting cost per square cm is Rs.10. Which of the following is the approximate difference between the painting cost of the sphere and the hemispheres? (Use  $\pi = 22/7$ , rounded off to two decimal places.)

- Ans
- 1. Rs.1,600.00
  - 2. Rs.1,500.556
  - 3. Rs.1,571.43
  - 4. Rs.1,512.45

Question ID : 26433075331  
Status : Not Answered  
Chosen Option : --

Q.5 If the price of petrol becomes Rs.110/litre from Rs.95/litre, by how much percentage the consumption of petrol should be reduced by Ravi so that his expenditure remains the same? (correct up to two decimals)

- Ans
- 1. 15.29%
  - 2. 16.34%
  - 3. 14.63%
  - 4. 13.64%

Question ID : 26433080292  
Status : Answered  
Chosen Option : 1

Q.6 If 3,x,12 and  $2x + 7$  are in proportion, then  $6x$  is :

- Ans
- 1.  $\frac{21}{2}$
  - 2. 42
  - 3. 21
  - 4.  $\frac{7}{2}$

Question ID : 26433081716  
Status : Answered  
Chosen Option : 3

Q.7 The greatest number that can exactly divide 1560 and 2040 is X. What is the value of  $121 - X$ ?

Ans  1. 1

2. 24

3. 49

4. 20

Question ID : 264330116641

Status : Not Answered

Chosen Option : --

Q.8 The sum of two numbers is 21, and their HCF and LCM are 7 and 14, respectively. The sum of the reciprocals of the two numbers is:

Ans

1.  $\frac{1}{4}$

2.  $\frac{1}{14}$

3.  $\frac{3}{14}$

4.  $\frac{3}{4}$

Question ID : 26433082591

Status : Answered

Chosen Option : 3

Q.9 The fourth proportional 6, 9, 18 is:

Ans  1. 15

2. 9

3. 24

4. 27

Question ID : 26433082646

Status : Answered

Chosen Option : 4

Q.10 A person invests ₹30,000 for 5 years at a certain rate of interest compounded annually. At the end of 1 year, if the sum amounts to ₹34,200, then find the amount at the end of the second year.

- Ans
- ✓ 1. ₹38,988
  - ✗ 2. ₹39,876
  - ✗ 3. ₹45,432
  - ✗ 4. ₹44,365

Question ID : 26433080039  
Status : Not Answered  
Chosen Option : --

Q.11 14 persons can complete  $\frac{5}{12}$  part of a work in 18 days, working 7 hours daily. How many hours working daily will 21 persons complete the rest of the work in 15 days?

- Ans
- ✓ 1.  $7\frac{21}{25}$  hours
  - ✗ 2.  $3\frac{21}{25}$  hours
  - ✗ 3.  $11\frac{3}{25}$  hours
  - ✗ 4.  $9\frac{16}{25}$  hours

Question ID : 26433064934  
Status : Not Answered  
Chosen Option : --

Q.12 Three bicycles are bought for Rs.16,500 and the transport cost per bicycle is Rs.200. What should be the selling price (in Rs.) of each bicycle to have a profit of 8%?

- Ans
- ✗ 1. 5661
  - ✗ 2. 5166
  - ✗ 3. 6651
  - ✓ 4. 6156

Question ID : 26433071253  
Status : Answered  
Chosen Option : 4

Q.13 If a man climbs a hill at 6 km/h on the journey from foot to top of the hill and returns at 10 km/h, then find his average speed for the journey (in km/h).

- Ans
- ✗ 1. 6.5
  - ✗ 2. 4
  - ✗ 3. 8
  - ✓ 4. 7.5

Question ID : 26433079907  
Status : Answered  
Chosen Option : 4

Q.14 Vinod buys an article and sells it at a loss of 5%. If he would have bought it for 20% less and sold it for Rs.25 more, he would have gained 20%. What was the original cost price?

- Ans  1. Rs.2,500  
 2. Rs.2,000  
 3. Rs.2,250  
 4. Rs.1,850

Question ID : 26433075466  
Status : Not Answered  
Chosen Option : --

Q.15 The present population of a city is estimated to be 10 lakh and is expected to increase to 12.10 lakh during the next 2 years. The uniform annual rate of growth is:

- Ans  1. 8%  
 2. 12%  
 3. 10%  
 4. 7%

Question ID : 26433076083  
Status : Not Answered  
Chosen Option : --

Q.16 The percentage equivalence of the fraction  $\frac{3}{4}$  is:

- Ans  1. 80%  
 2. 65%  
 3. 75%  
 4. 70%

Question ID : 26433075101  
Status : Answered  
Chosen Option : 3

Q.17 In a circular race of 625 m, X and Y start from the same point, at the same time and at speeds of 36 km/h and 54 km/h, respectively. When will they meet again for the first time on the track if they are running in the opposite directions?

- Ans  1. In 15 seconds  
 2. In 20 seconds  
 3. In 25 seconds  
 4. In 10 seconds

Question ID : 26433076382  
Status : Answered  
Chosen Option : 3

Q.18 The height of a right circular cone is 24 cm and its slant height is 25 cm. What is the curved surface area of the cone?

(Use  $\pi = \frac{22}{7}$ )

- Ans
- 1. 528 cm<sup>2</sup>
  - 2. 550 cm<sup>2</sup>
  - 3. 648 cm<sup>2</sup>
  - 4. 548 cm<sup>2</sup>

Question ID : 26433075212  
Status : Answered  
Chosen Option : 2

Q.19 The average marks obtained by Mahesh in five subjects is 62 and he obtains 71 marks in the sixth subject. What is the average of the marks secured by Mahesh in all six subjects?

- Ans
- 1. 63.5
  - 2. 65.5
  - 3. 64.6
  - 4. 62.4

Question ID : 26433080287  
Status : Answered  
Chosen Option : 1

Q.20 The marked price of a woollen jacket is Rs.800. The shopkeeper allows a discount of 10% on every item. Due to off-season, the shopkeeper allows additional discount of 5% on jacket. Find the selling price of the jacket?

- Ans
- 1. Rs.720
  - 2. Rs.684
  - 3. Rs.705
  - 4. Rs.668

Question ID : 26433065276  
Status : Answered  
Chosen Option : 4

Section : Part-D-English

Q.1 Select the most appropriate meaning of the given idiom.

Keep a straight face

- Ans
- 1. To pretend to be cheerful
  - 2. When a plan suddenly fails
  - 3. To be stingy
  - 4. Look serious though you want to laugh

Question ID : 26433072683  
Status : Answered  
Chosen Option : 1

Q.2 Select the most appropriate synonym of the given word.

Attain

- Ans  1. Achieve  
 2. Abandon  
 3. Destroy  
 4. Commence

Question ID : 26433073690  
Status : Answered  
Chosen Option : 1

Q.3 Select the most appropriate option to fill in the blank.

The play usually needs half an hour for its preparation and makeup, and its performance \_\_\_\_\_ within ten minutes.

- Ans  1. would end  
 2. ends  
 3. has ended  
 4. ended

Question ID : 26433089301  
Status : Answered  
Chosen Option : 4

Q.4 Select the most appropriate option to fill in the blank.

Most often, child labour occurs when families \_\_\_\_\_ financial challenges or uncertainty – whether due to poverty, sudden illness of a caregiver or job loss of a primary wage earner.

- Ans  1. face  
 2. emulate  
 3. contend  
 4. happen

Question ID : 26433084864  
Status : Answered  
Chosen Option : 1

Q.5 Select the most appropriate ANTONYM of the given word.

Quiet

- Ans  1. Stillness  
 2. Commotion  
 3. Compose  
 4. Completely

Question ID : 26433086344  
Status : Answered  
Chosen Option : 2

Q.6 Select the most appropriate option to fill in the blank.

It is better to end up certain matters than \_\_\_\_\_ a dead horse.

- Ans
- 1. talking
  - 2. riding
  - 3. coaching
  - 4. beating

Question ID : 26433073211  
Status : Answered  
Chosen Option : 2

Q.7 Select the most appropriate option that can substitute the underlined segment in the given sentence. If there is no need to substitute it, select 'No substitution required'.

While I was driving the car, my brother talked over phone to his kid.

- Ans
- 1. was talking over the phone
  - 2. had talked over the phone
  - 3. No substitution required
  - 4. talking over the phone

Question ID : 26433088559  
Status : Answered  
Chosen Option : 1

Q.8 Select the most appropriate synonym of the underlined word in the given sentence.

Incompetent people keep on blaming others for their failures.

- Ans
- 1. inappropriate
  - 2. inefficient
  - 3. incongruous
  - 4. inevitable

Question ID : 26433092109  
Status : Answered  
Chosen Option : 2

Q.9 Select the most appropriate ANTONYM of the given word.

Salient

- Ans
- 1. Noteworthy
  - 2. Striking
  - 3. Clear
  - 4. Negligible

Question ID : 26433072667  
Status : Answered  
Chosen Option : 4

Q.10 Select the most appropriate option to fill in the blank.

The cat couldn't find a \_\_\_\_\_ place for its kittens in the backyard of the house.

- Ans
- 1. stern
  - 2. drastic
  - 3. proper
  - 4. vague

Question ID : 26433073788  
Status : Answered  
Chosen Option : 3

Q.11 Select the most appropriate homophone of the given word.

Ate

- Ans
- 1. Egg
  - 2. Hate
  - 3. Eight
  - 4. Weight

Question ID : 26433086351  
Status : Answered  
Chosen Option : 2

Q.12 Select the INCORRECTLY spelt word.

- Ans
- 1. Abundant
  - 2. Ecstasy
  - 3. Pionier
  - 4. Engineer

Question ID : 26433073652  
Status : Answered  
Chosen Option : 3

Q.13 Select the most appropriate option that can substitute the underlined segment in the given sentence. If there is no need to substitute it, select 'No substitution required'.

Robinson Crusoe puzzles when he discovered a footprint in the sand.

- Ans
- 1. was puzzled
  - 2. has puzzled
  - 3. is puzzled
  - 4. No substitution required

Question ID : 264330101273  
Status : Answered  
Chosen Option : 1



Q.14 Select the most appropriate ANTONYM of the given word.

Restore

- Ans  1. Destroy  
 2. Random  
 3. Recover  
 4. Productive

Question ID : 26433090796  
Status : Answered  
Chosen Option : 1

Q.15 Select the most appropriate synonym of the word 'doubtful' from the following sentence.

He was in a dilemma about the completion of the project investigation because of his health issues.

- Ans  1. Completion  
 2. Project  
 3. Dilemma  
 4. Investigation

Question ID : 26433072262  
Status : Answered  
Chosen Option : 3

**Comprehension:**

In the following passage, some words have been deleted. Read the passage carefully and select the most appropriate option to fill in each blank.

The world is becoming increasingly (1)\_\_\_\_\_. Since 2007, more than half of the world's population has been living in cities, and that share is (2)\_\_\_\_\_ to rise to 60 per cent by 2030. Cities and metropolitan areas are powerhouses of economic growth—(3)\_\_\_\_\_ about 60 per cent of global GDP. However, they also account for about 70 per cent of global carbon emissions and over 60 per cent of (4)\_\_\_\_\_ use. Rapid urbanisation is resulting in a growing number of slum dwellers, inadequate and (5)\_\_\_\_\_ infrastructure and services, worsening air pollution and unplanned urban sprawl.

SubQuestion No : 16

Q.16 Select the most appropriate option to fill in blank number 1.

- Ans  1. intensified  
 2. urbanised  
 3. localised  
 4. decentralised

Question ID : 26433088180  
Status : Answered  
Chosen Option : 4

**Comprehension:**

In the following passage, some words have been deleted. Read the passage carefully and select the most appropriate option to fill in each blank.

The world is becoming increasingly (1)\_\_\_\_\_. Since 2007, more than half of the world's population has been living in cities, and that share is (2)\_\_\_\_\_ to rise to 60 per cent by 2030. Cities and metropolitan areas are powerhouses of economic growth—(3)\_\_\_\_\_ about 60 per cent of global GDP. However, they also account for about 70 per cent of global carbon emissions and over 60 per cent of (4)\_\_\_\_\_ use. Rapid urbanisation is resulting in a growing number of slum dwellers, inadequate and (5)\_\_\_\_\_ infrastructure and services, worsening air pollution and unplanned urban sprawl.

**SubQuestion No : 17**

**Q.17 Select the most appropriate option to fill in blank number 2.**

- Ans  1. projected  
 2. contrived  
 3. multiplied  
 4. planned

Question ID : 26433088181

Status : Answered

Chosen Option : 1

**Comprehension:**

In the following passage, some words have been deleted. Read the passage carefully and select the most appropriate option to fill in each blank.

The world is becoming increasingly (1)\_\_\_\_\_. Since 2007, more than half of the world's population has been living in cities, and that share is (2)\_\_\_\_\_ to rise to 60 per cent by 2030. Cities and metropolitan areas are powerhouses of economic growth—(3)\_\_\_\_\_ about 60 per cent of global GDP. However, they also account for about 70 per cent of global carbon emissions and over 60 per cent of (4)\_\_\_\_\_ use. Rapid urbanisation is resulting in a growing number of slum dwellers, inadequate and (5)\_\_\_\_\_ infrastructure and services, worsening air pollution and unplanned urban sprawl.

**SubQuestion No : 18**

**Q.18 Select the most appropriate option to fill in blank number 3.**

- Ans  1. attempting  
 2. exploiting  
 3. contributing  
 4. causing

Question ID : 26433088182

Status : Answered

Chosen Option : 3

**Comprehension:**

In the following passage, some words have been deleted. Read the passage carefully and select the most appropriate option to fill in each blank.

The world is becoming increasingly (1)\_\_\_\_\_. Since 2007, more than half of the world's population has been living in cities, and that share is (2)\_\_\_\_\_ to rise to 60 per cent by 2030. Cities and metropolitan areas are powerhouses of economic growth—(3)\_\_\_\_\_ about 60 per cent of global GDP. However, they also account for about 70 per cent of global carbon emissions and over 60 per cent of (4)\_\_\_\_\_ use. Rapid urbanisation is resulting in a growing number of slum dwellers, inadequate and (5)\_\_\_\_\_ infrastructure and services, worsening air pollution and unplanned urban sprawl.

**SubQuestion No : 19**

**Q.19** Select the most appropriate option to fill in blank number 4.

- Ans
- 1. wealth
  - 2. nature
  - 3. assets
  - 4. resource

Question ID : 26433088183

Status : Answered

Chosen Option : 4

**Comprehension:**

In the following passage, some words have been deleted. Read the passage carefully and select the most appropriate option to fill in each blank.

The world is becoming increasingly (1)\_\_\_\_\_. Since 2007, more than half of the world's population has been living in cities, and that share is (2)\_\_\_\_\_ to rise to 60 per cent by 2030. Cities and metropolitan areas are powerhouses of economic growth—(3)\_\_\_\_\_ about 60 per cent of global GDP. However, they also account for about 70 per cent of global carbon emissions and over 60 per cent of (4)\_\_\_\_\_ use. Rapid urbanisation is resulting in a growing number of slum dwellers, inadequate and (5)\_\_\_\_\_ infrastructure and services, worsening air pollution and unplanned urban sprawl.

**SubQuestion No : 20**

**Q.20** Select the most appropriate option to fill in blank number 5.

- Ans
- 1. destructed
  - 2. overburdened
  - 3. redundant
  - 4. necessary

Question ID : 26433088184

Status : Answered

Chosen Option : 3

Section : Part-D-Hindi

**Q.1** निम्न में से किस वाक्य में वर्तनी की त्रुटि है, पहचान करें?

- Ans
- 1. रमेश बाजार से सब्जी लाया।
  - 2. नेहा की स्कूल में मन नहीं लगाता।
  - 3. सुजाता मनोहर के गाँव से है।
  - 4. महेंद्र बड़े जमींदार का बेटा है।

Question ID : 26433067108

Status : Not Answered

Chosen Option : --

Q.2 निम्न शब्दों में से आश्रम का पर्याय शब्द है-

- Ans
- 1. निवास
  - 2. थान
  - 3. अखाड़ा
  - 4. साकेत

Question ID : 26433074415  
Status : Not Answered  
Chosen Option : --

Q.3 “प्रत्येक व्यक्ति को स्वयं आत्मनिर्भर होना चाहिए।”  
उपरोक्त वाक्य का शुद्ध रूप क्या होगा?

- Ans
- 1. प्रत्येक व्यक्ति को स्वयं में आत्मनिर्भर होना चाहिए।
  - 2. प्रत्येक व्यक्ति को आत्मनिर्भर मिलाना चाहिए।
  - 3. प्रत्येक व्यक्ति को स्वयं आत्मनिर्भर रहना चाहिए।
  - 4. प्रत्येक व्यक्ति को आत्मनिर्भर होना चाहिए।

Question ID : 26433066998  
Status : Not Answered  
Chosen Option : --

Q.4 निम्नलिखित विकल्पों में से 'तलवार की धार पर चलना' मुहावरे का अर्थ क्या है?

- Ans
- 1. चाल सफल न होना।
  - 2. ताकतवर होना
  - 3. अनावश्यक सलाह देना
  - 4. जोखिम-भरा काम करना

Question ID : 26433062554  
Status : Not Answered  
Chosen Option : --

Q.5 निम्नलिखित विकल्पों में से कौन सा एक वाक्य मूल क्रिया-विशेषण से सम्बन्ध नहीं रखता है?

- Ans
- 1. नगर यहाँ से दूर पड़ता है।
  - 2. वह अचानक आ गया।
  - 3. सीता खेलती-कूदती रहती है।
  - 4. तुम ठीक कह रहे हो।

Question ID : 26433062957  
Status : Not Answered  
Chosen Option : --

Q.6 निम्न वाक्यांश के लिए एक शब्द क्या होगा?  
जिसके शेखर पर चन्द्र हो

- Ans
- 1. चन्द्रकान्त
  - 2. चन्दरेखा
  - 3. चन्द्रशेखर
  - 4. चन्द्रपाणि

Question ID : 26433070085  
Status : Not Answered  
Chosen Option : --

Q.7 "मनुष्य को किसी के प्रति द्वेष नहीं रखना चाहिए।"  
उक्त वाक्य में प्रयुक्त 'द्वेष' के स्थान पर उसके समानार्थी शब्द का प्रयोग निम्न में से किस वाक्य में किया गया है?

- Ans
- 1. मनुष्य को किसी के प्रति ममता नहीं रखनी चाहिए।
  - 2. मनुष्य को किसी के प्रति ईर्ष्या नहीं रखनी चाहिए।
  - 3. मनुष्य को किसी के प्रति प्रतिशोध का भाव नहीं रखना चाहिए।
  - 4. मनुष्य को किसी के प्रति क्रोध नहीं रखना चाहिए।

Question ID : 26433067029  
Status : Not Answered  
Chosen Option : --

Q.8 'जो निगाह से परे हो' इस वाक्यांश के लिए सार्थक शब्द है -

- Ans
- 1. प्रत्यक्ष
  - 2. परोक्ष
  - 3. दृष्टिक्षेप
  - 4. प्रत्यागत

Question ID : 26433062336  
Status : Not Answered  
Chosen Option : --

Q.9 'उसकी महिला भी उसके साथ आई है।' इस वाक्य में रेखांकित शब्द के स्थान पर सर्वोपयुक्त शब्द निम्न में से क्या होगा?

- Ans
- 1. साथी
  - 2. मित्र
  - 3. स्त्री
  - 4. पत्नी

Question ID : 26433062781  
Status : Not Answered  
Chosen Option : --

Q.10 "नम्रतापूर्वक याचना करना \_\_\_\_\_ कहलाता है।"  
उपरोक्त वाक्य में रिक्त स्थान पर किस शब्द का प्रयोग उपयुक्त होगा?

- Ans
- 1. अनुदेश
  - 2. अनुरोध
  - 3. आग्रह
  - 4. अनुग्रह

Question ID : 26433067007  
Status : Not Answered  
Chosen Option : --

Q.11 नीचे दिए गए मुहावरे में रेखांकित अंश के स्थान पर सबसे उपयुक्त विकल्प कौन-सा होगा?  
तिल का पहाड़ करना

- Ans
- 1. ताड़
  - 2. आम
  - 3. खजूर
  - 4. पेड़

Question ID : 26433066746  
Status : Not Answered  
Chosen Option : --

Q.12 आज शीतल पवन बह रही है।  
उपरोक्त वाक्य में रेखांकित शब्द के उचित पर्यायवाची शब्द का चयन विकल्पों में से कीजिए।

- Ans
- 1. बतासा
  - 2. अनिल
  - 3. अनल
  - 4. क्षणदा

Question ID : 26433079724  
Status : Not Answered  
Chosen Option : --

Q.13 जिससे किसी कार्य के करने का बोध होता है, उसे कहते हैं-

- Ans
- 1. संज्ञा
  - 2. सर्वनाम
  - 3. विशेषण
  - 4. क्रिया

Question ID : 26433085036  
Status : Not Answered  
Chosen Option : --

Q.14 विकल्पों में दिया गया कौन सा शब्द निम्न वाक्य में रेखांकित अंश के स्थान पर आ सकता है?  
वह सचमुच में बीमार है।

- Ans
- 1. झूठ
  - 2. वाकई
  - 3. सच
  - 4. सत्य

Question ID : 26433066878  
Status : Not Answered  
Chosen Option : --

Q.15 दिए गए वाक्य के रेखांकित शब्द को सर्वोचित विकल्प से प्रतिस्थापित करें।  
बरात का अभिवादन आत्मीयता से किया गया।

- Ans
- 1. सम्मान
  - 2. अभिनंदन
  - 3. स्वागत
  - 4. अपमान

Question ID : 26433069914  
Status : Not Answered  
Chosen Option : --

**Comprehension:**

निम्नलिखित गद्यांश में कुछ शब्दों को हटा दिया गया है। दिए गए विकल्पों की सहायता से रिक्त स्थानों की पूर्ति कीजिए। प्रत्येक संख्या के लिए सबसे उपयुक्त विकल्प का चयन कीजिए।  
मनुष्य विवेकशील 1. \_\_\_\_\_ है। सब कुछ जानने और समझने की 2. \_\_\_\_\_ उसमें विद्यमान है। विशेष ज्ञान रूप विज्ञान उसकी इसी 3. \_\_\_\_\_ वृत्ति का परिणाम है। पेड़ से फल को 4. \_\_\_\_\_ गिरते हुए देखा तो जिज्ञासा हुई कि वस्तुएँ नीचे पृथ्वी पर ही क्यों गिरती हैं? विज्ञान ने गुरुत्वाकर्षण का महत्त्वपूर्ण 5. \_\_\_\_\_ दिया।

**SubQuestion No : 16**

Q.16 रिक्त स्थान 1 की पूर्ति के लिए सबसे उपयुक्त विकल्प का चयन कीजिए।

- Ans
- 1. आविष्कार
  - 2. प्राणी
  - 3. मानव
  - 4. असाध्य

Question ID : 264330111041  
Status : Not Answered  
Chosen Option : --

**Comprehension:**

निम्नलिखित गद्यांश में कुछ शब्दों को हटा दिया गया है। दिए गए विकल्पों की सहायता से रिक्त स्थानों की पूर्ति कीजिए। प्रत्येक संख्या के लिए सबसे उपयुक्त विकल्प का चयन कीजिए।  
मनुष्य विवेकशील 1. \_\_\_\_\_ है। सब कुछ जानने और समझने की 2. \_\_\_\_\_ उसमें विद्यमान है। विशेष ज्ञान रूप विज्ञान उसकी इसी 3. \_\_\_\_\_ वृत्ति का परिणाम है। पेड़ से फल को 4. \_\_\_\_\_ गिरते हुए देखा तो जिज्ञासा हुई कि वस्तुएँ नीचे पृथ्वी पर ही क्यों गिरती हैं? विज्ञान ने गुरुत्वाकर्षण का महत्त्वपूर्ण 5. \_\_\_\_\_ दिया।

**SubQuestion No : 17**

Q.17 रिक्त स्थान 2 की पूर्ति के लिए सबसे उपयुक्त विकल्प का चयन कीजिए।

- Ans  1. घड़ियाँ  
 2. इच्छा  
 3. गुंजाइश  
 4. मशीन

Question ID : 264330111042  
Status : Not Answered  
Chosen Option : --

**Comprehension:**

निम्नलिखित गद्यांश में कुछ शब्दों को हटा दिया गया है। दिए गए विकल्पों की सहायता से रिक्त स्थानों की पूर्ति कीजिए। प्रत्येक संख्या के लिए सबसे उपयुक्त विकल्प का चयन कीजिए।  
मनुष्य विवेकशील 1. \_\_\_\_\_ है। सब कुछ जानने और समझने की 2. \_\_\_\_\_ उसमें विद्यमान है। विशेष ज्ञान रूप विज्ञान उसकी इसी 3. \_\_\_\_\_ वृत्ति का परिणाम है। पेड़ से फल को 4. \_\_\_\_\_ गिरते हुए देखा तो जिज्ञासा हुई कि वस्तुएँ नीचे पृथ्वी पर ही क्यों गिरती हैं? विज्ञान ने गुरुत्वाकर्षण का महत्त्वपूर्ण 5. \_\_\_\_\_ दिया।

**SubQuestion No : 18**

Q.18 रिक्त स्थान 3 की पूर्ति के लिए सबसे उपयुक्त विकल्प का चयन कीजिए।

- Ans  1. विचित्र  
 2. जिज्ञासा  
 3. रोग  
 4. शांत

Question ID : 264330111043  
Status : Not Answered  
Chosen Option : --

**Comprehension:**

निम्नलिखित गद्यांश में कुछ शब्दों को हटा दिया गया है। दिए गए विकल्पों की सहायता से रिक्त स्थानों की पूर्ति कीजिए। प्रत्येक संख्या के लिए सबसे उपयुक्त विकल्प का चयन कीजिए।  
मनुष्य विवेकशील 1. \_\_\_\_\_ है। सब कुछ जानने और समझने की 2. \_\_\_\_\_ उसमें विद्यमान है। विशेष ज्ञान रूप विज्ञान उसकी इसी 3. \_\_\_\_\_ वृत्ति का परिणाम है। पेड़ से फल को 4. \_\_\_\_\_ गिरते हुए देखा तो जिज्ञासा हुई कि वस्तुएँ नीचे पृथ्वी पर ही क्यों गिरती हैं? विज्ञान ने गुरुत्वाकर्षण का महत्त्वपूर्ण 5. \_\_\_\_\_ दिया।

**SubQuestion No : 19**

Q.19 रिक्त स्थान 4 की पूर्ति के लिए सबसे उपयुक्त विकल्प का चयन कीजिए।

- Ans  1. हमेशा  
 2. नीचे  
 3. उठाते  
 4. आते

Question ID : 264330111044  
Status : Not Answered  
Chosen Option : --



**Comprehension:**

निम्नलिखित गद्यांश में कुछ शब्दों को हटा दिया गया है। दिए गए विकल्पों की सहायता से रिक्त स्थानों की पूर्ति कीजिए। प्रत्येक संख्या के लिए सबसे उपयुक्त विकल्प का चयन कीजिए।  
मनुष्य विवेकशील 1. \_\_\_\_\_ है। सब कुछ जानने और समझने की 2. \_\_\_\_\_ उसमें विद्यमान है। विशेष ज्ञान रूप विज्ञान उसकी इसी 3. \_\_\_\_\_ वृत्ति का परिणाम है। पेड़ से फल को 4. \_\_\_\_\_ गिरते हुए देखा तो जिज्ञासा हुई कि वस्तुएँ नीचे पृथ्वी पर ही क्यों गिरती हैं? विज्ञान ने गुरुत्वाकर्षण का महत्त्वपूर्ण 5. \_\_\_\_\_ दिया।

**SubQuestion No : 20**

Q.20 रिक्त स्थान 5 की पूर्ति के लिए सबसे उपयुक्त विकल्प का चयन कीजिए।

- Ans
- 1. सूचना
  - 2. क्षेत्र
  - 3. ज्ञान
  - 4. सिद्धांत

Question ID : 264330111045

Status : Not Answered

Chosen Option : --

KD Job Updates

## Constable GD in CAPFs SSF Rifleman GD in Assam Rifles and Sepoy in NCB Examination 2022

Roll Number	@Qmaths Telegram Channel
Candidate Name	@Qmaths Telegram Channel
Venue Name	Dr. Ghanshyam Singh College Of Education
Exam Date	02/02/2023
Exam Time	5:15 PM - 6:15 PM
Subject	Constable GD Examination 2022

### Section : Part-A-General Intelligence and Reasoning

Q.1 दिए गए विकल्पों में से उस अक्षर-समूह का चयन कीजिए जो निम्न श्रृंखला में प्रश्न-चिह्न (?) के स्थान पर आ सकता है।  
BWLS, FTPW, JQTA, ? , RKBI

- Ans
- 1. NNXE
  - 2. NXCR
  - 3. LKPE
  - 4. JLPR

Question ID : 26433074741  
Status : Answered  
Chosen Option : 1

Q.2 एक निश्चित कूट भाषा में, 'FIT' को 'FGIST' के रूप में लिखा जाता है और 'KIN' को 'KLIMN' के रूप में लिखा जाता है। उसी भाषा में 'JOY' को कैसे लिखा जाएगा?

- Ans
- 1. JJOYY
  - 2. JKOXY
  - 3. KJOYX
  - 4. KKOXX

Question ID : 26433069643  
Status : Answered  
Chosen Option : 2

Q.3 कौन-सा अक्षर-समूह दी गई श्रृंखला में प्रश्नचिह्न (?) के स्थान पर आकर श्रृंखला को पूर्ण करेगा?  
ALTY, DNVA, ?, JRZE, MTBG

- Ans
- 1. GQYC
  - 2. GPYC
  - 3. GQXC
  - 4. GPXC

Question ID : 26433067950  
Status : Answered  
Chosen Option : 4

Q.4 एक कूट भाषा में 'sweet fruits' को 're de', 'mango is sweet' को 'de me ke', 'orange is citrus' को 'ke le pe', 'eat orange' को 'pe ne' के रूप में कूटबद्ध किया जाता है। शब्द 'citrus' के लिए कूट क्या होगा?

- Ans
- 1. ke
  - 2. pe
  - 3. le
  - 4. de

Question ID : 26433082268

Status : Answered

Chosen Option : 3

Q.5 Select the option that is related to the third word in the same way as the second word is related to the first word. (The words must be considered as meaningful English words and must not be related to each other based on the number of letters/number of consonants/vowels in the word.)  
Elephant : Herd :: Fish : ?

- Ans
- 1. Sea
  - 2. Shoal
  - 3. River
  - 4. Aquarium

Question ID : 26433067375

Status : Answered

Chosen Option : 2

Q.6 उस विकल्प का चयन कीजिए जो तीसरे शब्द से उसी प्रकार संबंधित है जिस प्रकार दूसरा शब्द पहले शब्द से संबंधित है। (शब्दों को अर्थपूर्ण शब्दों के रूप में मानना है और उन्हें शब्द में अक्षरों/व्यंजनों/स्वरों की संख्या के आधार पर एक-दूसरे से संबंधित नहीं करना है।)  
लेखक : कलम :: डॉक्टर : \_\_\_\_\_

- Ans
- 1. इरेज़र
  - 2. शार्पनर
  - 3. स्टेथोस्कोप
  - 4. धातु

Question ID : 26433079400

Status : Answered

Chosen Option : 3

Q.7 दिए गए विकल्पों में से वह संख्या चुनिए, जो निम्नलिखित श्रृंखला में प्रश्न-चिह्न (?) को प्रतिस्थापित कर सके।  
23, 32, 14, 41, 5, 50, ?

- Ans
- 1. -4
  - 2. -2
  - 3. 2
  - 4. -3

Question ID : 26433078925

Status : Answered

Chosen Option : 1

Q.8 किस विकल्प में निम्नलिखित शब्दों का वह क्रम दिया गया है, जिस क्रम में वे अंग्रेजी शब्दकोश में आते हैं?

- 1 fondant
- 2 fountain
- 3 follow
- 4 forgive
- 5 forget

- Ans
- 1. 3,4,1,5,2
  - 2. 3,1,5,4,2
  - 3. 3,1,4,5,2
  - 4. 3,5,1,2,4

Question ID : 26433069309  
Status : Answered  
Chosen Option : 2

Q.9 यदि @ का अर्थ + , # का अर्थ × , \$ का अर्थ + और % का अर्थ - है, तो निम्नलिखित समीकरण का मान क्या होगा?

$$10 \# 25 @ 5 \$ 20 \% 10 = ?$$

- Ans
- 1. 60
  - 2. 50
  - 3. 40
  - 4. 65

Question ID : 26433085655  
Status : Answered  
Chosen Option : 1

Q.10 छः व्यक्ति A, B, C, D, E और F एक पंक्ति में उत्तर की ओर मुख करके बैठे हैं। D पंक्ति के दाएं सिरे पर बैठा है। F, D के बाईं ओर ठीक बगल में बैठा है। A और F के बीच में केवल B बैठा है। C और A के बीच में केवल E बैठा है। A के दाईं ओर ठीक बगल में कौन बैठा है?

- Ans
- 1. F
  - 2. D
  - 3. B
  - 4. E

Question ID : 26433074626  
Status : Answered  
Chosen Option : 3

Q.11 उस विकल्प का चयन करें, जो पांचवीं संख्या से उसी प्रकार संबंधित है, जिस प्रकार दूसरी संख्या, पहली संख्या से संबंधित है और चौथी संख्या, तीसरी संख्या से संबंधित है।

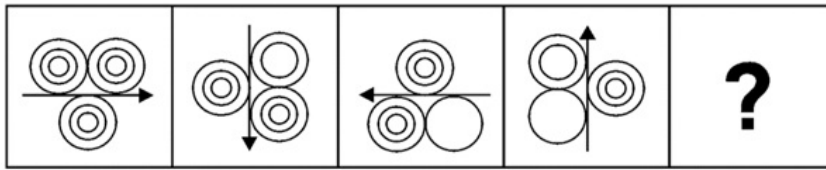
$$320 : 4 :: 40 : 2 :: 1715 : ?$$

- Ans
- 1. 7
  - 2. 9
  - 3. 10
  - 4. 5

Question ID : 26433069422  
Status : Answered  
Chosen Option : 1

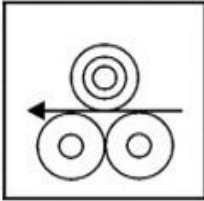
Q.12 दिए गए विकल्पों में से उस आकृति का चयन करें जो निम्नलिखित श्रृंखला में

प्रश्नवाचक चिह्न (?) का स्थान ले सकती है।

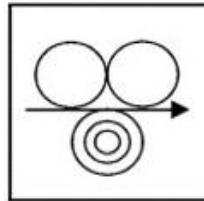


Ans

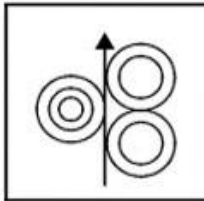
✗ 1.



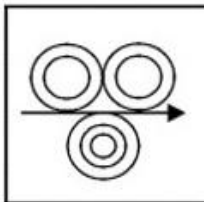
✓ 2.



✗ 3.



✗ 4.



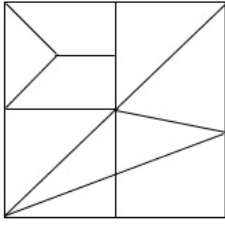
Question ID : 26433080485

Status : Answered

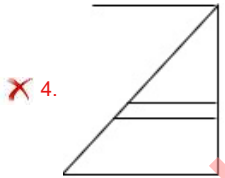
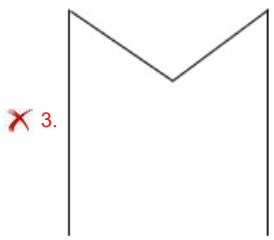
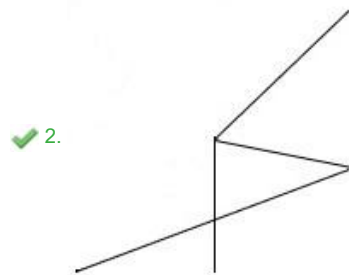
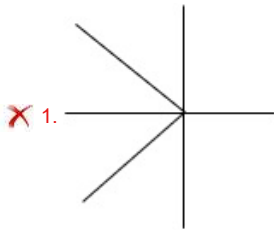
Chosen Option : 2

Q.13 वह विकल्प चित्र चुनिए, जो प्रस्तुत चित्र में अंतर्निहित है। (घुमाना अनुमन्य नहीं

है)



Ans



KD Job Updates

Question ID : 26433069357

Status : Answered

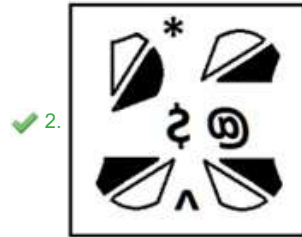
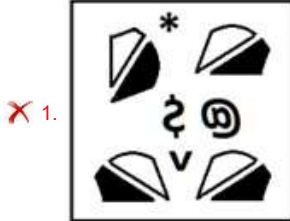
Chosen Option : 2

Q.14 दर्पण को दाईं ओर रखे जाने पर, निम्नलिखित में से कौन-सी आकृति दी गई प्रश्न आकृति का सटीक दर्पण प्रतिबिम्ब होगी?

प्रश्न आकृति:



Ans



Question ID : 26433087086  
Status : Answered  
Chosen Option : 2

Q.15 'A + B' का अर्थ है कि 'A , B का भाई है'  
'A - B' का अर्थ है कि 'A, B की पत्नी है'  
'A × B' का अर्थ है कि 'A , B का पुत्र है'  
'A ÷ B' का अर्थ है कि 'A , B का पति है'  
यदि  $P + Q - S + R \times L \div M$  है, तो निम्नलिखित में से कौन-सा कथन सही नहीं है?

- Ans
- ✗ 1. P, S की पत्नी का भाई है।
  - ✗ 2. Q, R के भाई की पत्नी है।
  - ✓ 3. M, Q की बहन है।
  - ✗ 4. M, R की माता है।

Question ID : 26433069656  
Status : Answered  
Chosen Option : 3

Q.16 तीन कथन दिए गए हैं, जिनके बाद तीन निष्कर्ष I, II और III दिए गए हैं। कथनों को सत्य मानते हुए, भले ही वे सामान्य रूप से ज्ञात तथ्यों से भिन्न प्रतीत होते हों, निर्धारित करें कि कौन-सा/से निष्कर्ष कथनों का तार्किक रूप से अनुसरण करता है/करते हैं।

कथन:

सभी लड़के पुरुष हैं।  
कुछ पुरुष लड़कियां हैं।  
सभी लड़कियां महिलाएँ हैं।  
निष्कर्ष:

I. सभी लड़के लड़कियां हैं।  
II. सभी पुरुष महिलाएँ हैं।  
III. कुछ लड़कियां पुरुष हैं।

- Ans  1. केवल निष्कर्ष III अनुसरण करता है  
 2. सभी निष्कर्ष अनुसरण करते हैं  
 3. केवल निष्कर्ष II और III अनुसरण करते हैं  
 4. केवल निष्कर्ष I और III अनुसरण करते हैं

Question ID : 26433090985

Status : Answered

Chosen Option : 1

Q.17 निम्नलिखित में से कौन-सी संख्या दी गई श्रृंखला में प्रश्न-चिह्न (?) को प्रतिस्थापित करेगी?  
51, 52, 56, ?, 81, 106

- Ans  1. 64  
 2. 66  
 3. 65  
 4. 67

Question ID : 26433069385

Status : Answered

Chosen Option : 3

Q.18 नीचे दिए गए समीकरण को गणितीय रूप से सही बनाने के लिए किन दो चिन्हों को परस्पर बदलना चाहिए?

$$25 \times 16 + 8 - 36 \div 18 = 32$$

- Ans  1. + और ÷  
 2. + और ×  
 3. - और +  
 4. × और -

Question ID : 264330117513

Status : Answered

Chosen Option : 1

Q.19 छः विद्यार्थी एक वृत्ताकार मेज के परितः मेज के केंद्र की ओर मुख करके बैठे हैं। मैरी, सुसान के बाईं ओर दूसरे स्थान पर है। एलिस, सुसान और प्रिया के ठीक बगल में है। रिया, प्रिया के दाईं ओर तीसरे स्थान पर बैठी है। जोन, रिया के बाईं ओर दूसरे स्थान पर बैठा है। प्रिया, सुसान के दाईं ओर दूसरे स्थान पर बैठी है। इनमें से कौन मैरी और सुसान के ठीक बगल में बैठा/बैठी है?

- Ans  1. जोन  
 2. रिया  
 3. प्रिया  
 4. एलिस

Question ID : 26433081772

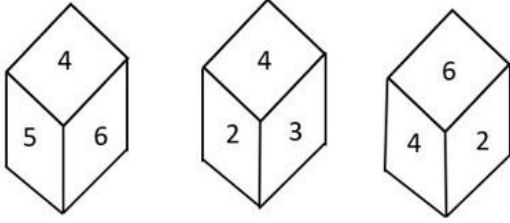
Status : Answered

Chosen Option : 2



Q.20

एक ही पासे की तीन अलग-अलग स्थितियों को दर्शाया गया है। '4' दर्शाने वाले फलक के विपरीत फलक की संख्या ज्ञात कीजिए।



- Ans
- 1. 3
  - 2. 2
  - 3. 5
  - 4. 1

Question ID : 26433090079  
Status : Answered  
Chosen Option : 4

Section : Part-B-General Knowledge and General awareness

Q.1 As of November 2022, who is the Union Minister for Communications & Electronics and Information Technology in India?

- Ans
- 1. Anurag Thakur
  - 2. Narayan Rane
  - 3. Kiren Rijju
  - 4. Ashwini Vaishnav

Question ID : 264330114940  
Status : Answered  
Chosen Option : 4

Q.2 भारत में, मानसून की अवधि जून के आरंभ से सितंबर के मध्य तक \_\_\_\_\_ दिनों के बीच होती है।

- Ans
- 1. 100 - 120
  - 2. 60 - 80
  - 3. 260 - 280
  - 4. 200 - 240

Question ID : 26433089660  
Status : Answered  
Chosen Option : 1

Q.3 निम्नलिखित में से किसे कथक के लिए संगीत नाटक अकादमी पुरस्कार से सम्मानित किया गया है?

- Ans
- 1. सरोदी सैकिया
  - 2. टंकेश्वर हज़ारिका बोरबयान
  - 3. सुनयना हज़ारीलाल
  - 4. जोगेन दत्ता ब्यान

Question ID : 264330115882  
Status : Answered  
Chosen Option : 3

Q.4 What is the major constituent of cellular energy transfer systems?

- Ans
- 1. oxygen
  - 2. methane
  - 3. phosphorus
  - 4. carbon

Question ID : 264330115258  
Status : Answered  
Chosen Option : 1

Q.5 बी. आर. अम्बेडकर द्वारा दमित वर्ग संघ की स्थापना किस वर्ष की गई थी?

- Ans
- 1. 1928
  - 2. 1930
  - 3. 1932
  - 4. 1926

Question ID : 264330115695  
Status : Answered  
Chosen Option : 2

Q.6 चोल अभिलेखों के अनुसार विद्यालयों के रख-रखाव के लिए भूमि को क्या कहा जाता था?

- Ans
- 1. वेल्लनवगाई
  - 2. देवदान
  - 3. ब्रह्मदेय
  - 4. शालाभोग

Question ID : 264330115458  
Status : Answered  
Chosen Option : 4

Q.7 The principle of Fundamental Rights in the Indian Constitution has been borrowed from which of the following countries?

- Ans
- 1. Canada
  - 2. South Africa
  - 3. United States of America
  - 4. United Kingdom

Question ID : 26433091447  
Status : Answered  
Chosen Option : 3

Q.8 सितंबर 2022 में, मेडागास्कर गणराज्य में भारत के राजदूत के रूप में किसे नामित किया गया?

- Ans
- 1. बंडारू विल्सनबाबू
  - 2. अभय कुमार
  - 3. नवीन श्रीवास्तव
  - 4. मनप्रीत वोहरा

Question ID : 264330115003  
Status : Answered  
Chosen Option : 3

Q.9 भारत में, किसके द्वारा मुख्यमंत्री की नियुक्ति की जाती है?

- Ans
- 1. राष्ट्रपति
  - 2. प्रधानमंत्री
  - 3. राज्यपाल
  - 4. उप राष्ट्रपति

Question ID : 26433089185  
Status : Answered  
Chosen Option : 3

Q.10 Roads linking a state capital with different district headquarters are known as \_\_\_\_\_.  
These roads are constructed and maintained by the State Public Works Department (PWD) in State and Union Territories.

- Ans
- 1. District Roads
  - 2. National Highways
  - 3. Border Roads
  - 4. State Highways

Question ID : 264330115547  
Status : Answered  
Chosen Option : 4

Q.11 भारत सरकार ने वर्ष \_\_\_\_\_ में एक अधिनियम पारित करके, तत्कालीन जम्मू और कश्मीर राज्य की विशेष संवैधानिक स्थिति को रद्द कर दिया।

- Ans
- 1. 2021
  - 2. 2014
  - 3. 2018
  - 4. 2019

Question ID : 264330116228  
Status : Answered  
Chosen Option : 3

Q.12 साजिबु चेराओबा भारतीय राज्य \_\_\_\_\_ में सनामाहिज्म (Sanamahism) धर्म का पालन करने वाले लोगों का चंद्र नव वर्ष उत्सव है।

- Ans
- 1. सिक्किम
  - 2. मणिपुर
  - 3. असम
  - 4. अरुणाचल प्रदेश

Question ID : 264330115116  
Status : Answered  
Chosen Option : 2

Q.13 निम्नलिखित में से किस खिलाड़ी ने भारत के लिए क्रिकेट टेस्ट मैच में पहला शतक बनाया था?

- Ans
- 1. विनू मांकड़
  - 2. लाला अमरनाथ
  - 3. सी के नायडू
  - 4. पंकज राय

Question ID : 264330116299  
Status : Answered  
Chosen Option : 2

Q.14 मक्का और धान की फसलों की कटाई के दौरान किया जाने वाला हुरका बाउल (Hurka Baul) नृत्य मुख्यतः एक कथात्मक नृत्य रूप है। यह निम्नलिखित में से किस राज्य से संबंधित है?

- Ans  1. उत्तराखंड  
 2. पंजाब  
 3. ओडिशा  
 4. पश्चिम बंगाल

Question ID : 264330115065  
Status : Answered  
Chosen Option : 4

Q.15 आईओसी (IOC) के अंतर्गत पहला आधुनिक ओलंपिक खेल कहाँ आयोजित हुआ था?

- Ans  1. सिडनी में  
 2. एथेंस में  
 3. टोक्यो में  
 4. ब्रिस्बेन में

Question ID : 26433071559  
Status : Answered  
Chosen Option : 4

Q.16 How does white silver chloride turn grey in sunlight?

- Ans  1. Due to the decomposition of silver chloride into silver and chlorine by light  
 2. Due to redox reaction  
 3. Due to the displacement of silver chloride to silver oxide  
 4. Due to rusting of silver in the presence of oxygen

Question ID : 26433087845  
Status : Answered  
Chosen Option : 3

Q.17 NABARD का पूर्ण रूप क्या है?

- Ans  1. National Bank for Architecture and Rural Development (नेशनल बैंक फॉर आर्किटेक्चर एंड रूरल डेवलपमेंट)  
 2. National Bank for Agriculture and River Development (नेशनल बैंक फॉर एग्रीकल्चर एंड रिवर डेवलपमेंट)  
 3. National Body for Agriculture and Rural Development (नेशनल बॉडी फॉर एग्रीकल्चर एंड रूरल डेवलपमेंट)  
 4. National Bank for Agriculture and Rural Development (नेशनल बैंक फॉर एग्रीकल्चर एंड रूरल डेवलपमेंट)

Question ID : 264330115300  
Status : Answered  
Chosen Option : 4

Q.18 काम के अधिकार को लागू करने के लिए भारत की केंद्र सरकार द्वारा महात्मा गांधी राष्ट्रीय ग्रामीण रोजगार गारंटी अधिनियम किस वर्ष में अधिनियमित किया गया था?

- Ans  1. 2006  
 2. 2007  
 3. 2009  
 4. 2005

Question ID : 264330116080  
Status : Not Answered  
Chosen Option : --

Q.19 Iron and steel are \_\_\_\_\_ industry.

- Ans
- 1. agriculture
  - 2. handloom
  - 3. agro-based
  - 4. mineral-based

Question ID : 264330115404  
Status : Answered  
Chosen Option : 4

Q.20 भारत में हरित क्रांति में उच्च उपज देने वाली किस्मों के बीजों के प्रयोग की मुख्य आवश्यकता क्या थी?

- Ans
- 1. फसल उगाने की पुरानी पद्धति का उपयोग
  - 2. पानी की अनियमित आपूर्ति का उपयोग
  - 3. स्थानीय बीजों का उपयोग
  - 4. उर्वरक और कीटनाशक का उपयोग

Question ID : 26433054625  
Status : Answered  
Chosen Option : 4

Section : Part-C-Elementary Mathematics

Q.1 6 के वर्ग, 4 के घन और 24 का लघुत्तम समापवर्त्य ज्ञात करें।

- Ans
- 1. 288
  - 2. 1152
  - 3. 576
  - 4. 144

Question ID : 264330116657  
Status : Answered  
Chosen Option : 3

Q.2 यदि  $k + 3$ ,  $k + 2$ ,  $3k - 7$ ,  $2k - 3$  दिए गए क्रम में समानुपात में हों, तो चौथे समानुपाती का न्यूनतम मान क्या होगा?

- Ans
- 1. -7
  - 2. -5
  - 3. 5
  - 4. 7

Question ID : 26433090255  
Status : Answered  
Chosen Option : 4

Q.3 13 घंटे की यात्रा के लिए कार की औसत चाल (किमी/घंटा में) क्या होगी, यदि यह पहले 3 घंटे के लिए 50 किमी/घंटा, अगले 4 घंटे के लिए 60 किमी/घंटा और अंतिम 6 घंटे के लिए 65 किमी/घंटा से चलती है?

- Ans
- 1. 60
  - 2. 65
  - 3. 62.5
  - 4. 65.5

Question ID : 26433075906  
Status : Answered  
Chosen Option : 1

Q.4 एक तेज़ ट्रेन 192 किमी की यात्रा के लिए, धीमी ट्रेन से 2 घंटे कम समय लेती है। यदि धीमी ट्रेन की चाल, तेज ट्रेन की चाल से 16 किमी/घंटा कम है, तो क्रमशः धीमी और तेज ट्रेनों की चाल ज्ञात करें।

- Ans
- 1. 32 किमी/घंटा, 48 किमी/घंटा
  - 2. 28 किमी/घंटा, 34 किमी/घंटा
  - 3. 30 किमी/घंटा, 40 किमी/घंटा
  - 4. 48 किमी/घंटा, 64 किमी/घंटा

Question ID : 26433075394  
Status : Answered  
Chosen Option : 1

Q.5 A dealer gives an additional concession of 25% on an item that already has a discount of 20% on the marked price. If a buyer pays ₹1,500 for the item, then find the marked price.

- Ans
- 1. ₹2,225
  - 2. ₹2,000
  - 3. ₹1,875
  - 4. ₹2,500

Question ID : 26433090324  
Status : Answered  
Chosen Option : 4

Q.6 What is the volume of a cone having radius 7 cm and slant height 25 cm? Take  $\pi = \frac{22}{7}$

- Ans
- 1. 1,323 cm<sup>3</sup>
  - 2. 1,223 cm<sup>3</sup>
  - 3. 1,232 cm<sup>3</sup>
  - 4. 1,322 cm<sup>3</sup>

Question ID : 26433076252  
Status : Answered  
Chosen Option : 3

Q.7 एक कस्बे की जनसंख्या में सालाना 20% की वृद्धि होती है। यदि 4 वर्ष पहले जनसंख्या 62,500 थी, तो वर्तमान जनसंख्या कितनी है?

- Ans
- 1. 1,29,600
  - 2. 1,29,800
  - 3. 1,29,900
  - 4. 1,29,700

Question ID : 26433082981  
Status : Answered  
Chosen Option : 1

Q.8 15%, 20% और 24% की क्रमिक छूटों के लिए समतुल्य एकल छूट कितनी होगी?

- Ans  1. 46.56%  
 2. 48.32%  
 3. 41.35%  
 4. 44.25%

Question ID : 26433066308  
Status : Answered  
Chosen Option : 2

Q.9 वह सबसे बड़ी संख्या क्या है जिससे क्रमशः 73 और 98 को विभाजित करने पर 4 और 6 शेष बचता है?

- Ans  1. 23  
 2. 13  
 3. 1  
 4. 46

Question ID : 26433075044  
Status : Answered  
Chosen Option : 1

Q.10 एक संख्या में 10% की वृद्धि की जाती है और बढ़ी हुई संख्या में 20% की कमी की जाती है। मूल संख्या में हुए परिवर्तन का शुद्ध प्रतिशत ज्ञात करें।

- Ans  1. 12% कमी  
 2. 8% कमी  
 3. 12% वृद्धि  
 4. 8% वृद्धि

Question ID : 26433075098  
Status : Answered  
Chosen Option : 1

Q.11 एक वस्तु के मूल्य में 30% की वृद्धि की जाती है और फिर 30% की कमी की जाती है। वस्तु के अंतिम मूल्य में शुद्ध प्रतिशत परिवर्तन ज्ञात कीजिए।

- Ans  1. 9% की वृद्धि  
 2. 12% की वृद्धि  
 3. 9% की कमी  
 4. 12% की कमी

Question ID : 26433079769  
Status : Answered  
Chosen Option : 3

Q.12 एक वाहन द्वारा एक निश्चित दूरी को एक निश्चित चाल से तय किया जाता है। यदि उस दूरी के आधे भाग को किसी दूसरे वाहन द्वारा दोगुने समय में तय किया गया है, तो दोनों वाहनों की चालों का अनुपात है।

- Ans  1. 4 : 1  
 2. 2 : 1  
 3. 6 : 1  
 4. 3 : 1

Question ID : 26433063949  
Status : Answered  
Chosen Option : 1

Q.13 एक निश्चित अवधि के लिए ₹2,300 की राशि पर 10% वार्षिक की दर से वार्षिक रूप से चक्रवृद्धि किया जाने वाला चक्रवृद्धि ब्याज ₹483 है। वर्षों में अवधि ज्ञात करें।

- Ans
- 1. 2 वर्ष 6 महीने
  - 2. 2 वर्ष
  - 3. 1 वर्ष 9 महीने
  - 4. 3 वर्ष

Question ID : 26433076228  
Status : Answered  
Chosen Option : 2

Q.14 एक अर्धगोले की त्रिज्या 42 cm है। इसके वक्र पृष्ठीय क्षेत्रफल का आधा ज्ञात कीजिए ( $\pi = \frac{22}{7}$ )।

- Ans
- 1. 5544 cm<sup>2</sup>
  - 2. 2772 cm<sup>2</sup>
  - 3. 3663 cm<sup>2</sup>
  - 4. 4554 cm<sup>2</sup>

Question ID : 26433075748  
Status : Answered  
Chosen Option : 2

Q.15 प्रीति 36 दिनों में एक कार्य कर सकती है। अनु उसी कार्य को 30 दिनों में कर सकती है। यदि प्रीति और अनु एक साथ कार्य शुरू करती हैं लेकिन अनु काम पूरा होने से 3 दिन पहले काम छोड़ देती है, तो दिनों की संख्या ज्ञात करें जिसमें कुल कार्य पूरा हुआ।

- Ans
- 1. 11 दिन
  - 2. 18 दिन
  - 3. 16 दिन
  - 4. 14 दिन

Question ID : 264330116912  
Status : Answered  
Chosen Option : 2

Q.16 यदि A और B के तृतीयानुपाती तथा A, B और C के चतुर्थानुपाती का अनुपात 3 : 4 है, तो B : C का अनुपात \_\_\_\_\_ है।

- Ans
- 1. 5 : 4
  - 2. 3 : 4
  - 3. 4 : 5
  - 4. 4 : 3

Question ID : 26433080117  
Status : Answered  
Chosen Option : 4

Q.17 5 पुरुष एक काम को 2 दिनों में पूरा कर सकते हैं, 4 महिलाएं उसे 3 दिनों में कर सकती हैं और 5 बच्चे उसे 3 दिनों में पूरा कर सकते हैं। 1 पुरुष, 1 महिला और 1 बच्चा तीनों मिलकर उसी काम को कितने दिनों में पूरा करेंगे?

- Ans
- 1. 10 दिन
  - 2. 6 दिन
  - 3. 8 दिन
  - 4. 4 दिन

Question ID : 26433076048  
Status : Answered  
Chosen Option : 4



Q.18 नींबू Rs.2 में 3 की दर से खरीदे जाते हैं और Rs.3 में 2 की दर से बेचे जाते हैं। लाभ प्रतिशत ज्ञात कीजिए।

- Ans  1. 125%  
 2. 128%  
 3. 115%  
 4. 120%

Question ID : 26433075148  
Status : Answered  
Chosen Option : 1

Q.19 एक खेप माल का तीन चौथाई भाग 6% लाभ पर और शेष माल 3% की हानि पर बेचा गया। यदि कुल लाभ Rs.600 है, तो उस खेप माल का क्रय मूल्य (Rs. में) \_\_\_\_\_ है।

- Ans  1. Rs.14,000  
 2. Rs.18,000  
 3. Rs.16,000  
 4. Rs.22,000

Question ID : 26433073006  
Status : Answered  
Chosen Option : 3

Q.20 एक कारखाने में लगातार 5 महीने में 7482, 8952, 6524, 8432 और 6562 इकाइयों का उत्पादन होता है। छठे महीने में कितनी इकाइयों का उत्पादन किया जाना चाहिए, ताकि 6 महीने का औसत उत्पादन 7200 हो जाए?

- Ans  1. 5812  
 2. 4912  
 3. 5248  
 4. 5420

Question ID : 26433079995  
Status : Answered  
Chosen Option : 3

Section : Part-D-English

Q.1 Select the most appropriate ANTONYM of the word given in the brackets to fill in the blank.

Don't try to walk \_\_\_\_\_ (after) you can crawl.

- Ans  1. before  
 2. later  
 3. already  
 4. soon

Question ID : 26433088852  
Status : Answered  
Chosen Option : 1

Q.2 Select the most appropriate meaning of the given idiom.

At the drop of a hat

- Ans  1. Do something immediately without hesitation  
 2. Refuse to do something  
 3. Force someone to behave in a disciplined manner  
 4. Extremely pleased about something

Question ID : 26433072685  
Status : Answered  
Chosen Option : 4

Q.3 Select the most appropriate option to fill in the blanks in the given sentence.

I \_\_\_\_\_ the gift of my aunt and she \_\_\_\_\_ money from my father.

- Ans  1. accepted; expected  
 2. excepted; expected  
 3. accepted; excepted  
 4. excepted; accepted

Question ID : 26433084773  
Status : Answered  
Chosen Option : 1

Q.4 The sentence given below has one misspelt word. Spot the INCORRECTLY spelt word and select its correct spelling.

A unanimous consent of all the shareholders was required to approve the merger.

- Ans  1. Unanemous  
 2. Ananimous  
 3. Unanimous  
 4. Anenimous

Question ID : 26433073561  
Status : Answered  
Chosen Option : 2

Q.5 Select the most appropriate meaning of the highlighted idiom in the given sentence.

The marriage of my elder brother has been **on the cards** for some time now.

- Ans  1. Improbable  
 2. Probable  
 3. Stuck  
 4. Certain

Question ID : 264330108897  
Status : Answered  
Chosen Option : 2

Q.6 Select the most appropriate option to fill in the blank.

There is only one thing that \_\_\_\_\_ with us that cannot be taken away: to act with courage and dignity and to stick to the ideals that have given meaning to life.

- Ans  1. have remained  
 2. remains  
 3. remaining  
 4. remained

Question ID : 26433092114  
Status : Answered  
Chosen Option : 4

Q.7 Select the most appropriate option that can substitute the underlined segment in the given sentence. If there is no need to substitute it, select 'No substitution'.

You should take your car in for a service because it has starting to make weird noises.

- Ans  1. because it had starting to make weird noises  
 2. because it has start to make weird noises  
 3. No substitution  
 4. because it's starting to make weird noises

Question ID : 264330101021  
Status : Answered  
Chosen Option : 4

Q.8 Select the most appropriate synonym of the underlined word in the given sentence.

In his moment of despair, I am with him.

- Ans  1. contentment  
 2. hope  
 3. misery  
 4. beliefs

Question ID : 26433092105  
Status : Answered  
Chosen Option : 1

Q.9 Select the most appropriate synonym of the word 'liberate' from the following sentence.

There is a famous saying by Rousseau which says that man is born free but he is surrounded by the clutches of slavery in society.

- Ans  1. Clutches  
 2. Slavery  
 3. Free  
 4. Surrounded

Question ID : 26433072264  
Status : Answered  
Chosen Option : 3

**Q.10** Select the most appropriate option that can substitute the underlined segment in the given sentence. If there is no need to substitute it, select 'No substitution required'.

Rosie became an expert in the field of painting by her.

- Ans**
- 1. paint by himself
  - 2. painting by herself
  - 3. No substitution required
  - 4. painted by herself

Question ID : 26433088561  
Status : Answered  
Chosen Option : 2

**Q.11** Select the most appropriate ANTONYM of the given word.

**Courtesy**

- Ans**
- 1. Crudeness
  - 2. Modulate
  - 3. Decline
  - 4. Generosity

Question ID : 26433090792  
Status : Answered  
Chosen Option : 1

**Q.12** Select the most appropriate synonym of the given word.

**Cheerless**

- Ans**
- 1. Strong
  - 2. Clear
  - 3. Gloomy
  - 4. Bright

Question ID : 26433074043  
Status : Answered  
Chosen Option : 3

**Q.13** Parts of the following sentence have been given as options. Select the option that contains an error.

The instructions on the bottle say – open the packet and poured the contents into hot water.

- Ans**
- 1. say – open the packet and
  - 2. poured the contents
  - 3. into hot water
  - 4. The instructions on the bottle

Question ID : 26433088470  
Status : Answered  
Chosen Option : 2

**Q.14 Select the INCORRECTLY spelt word.**

- Ans**  1. Jeopardy  
 2. Demolish  
 3. Discard  
 4. Discersive

Question ID : 26433073654  
Status : Answered  
Chosen Option : 4

**Q.15 Select the word that is OPPOSITE in meaning to the given word.**

**Benevolent**

- Ans**  1. Magnanimous  
 2. Unsparing  
 3. Benign  
 4. Malevolent

Question ID : 26433074427  
Status : Answered  
Chosen Option : 4

**Comprehension:**

In the following passage, some words have been deleted. Read the passage carefully and select the most appropriate option to fill in each blank.

The effect (1)\_\_\_\_\_ on the mind by travelling depends entirely on the mind of the traveller and on the way in which he conducts himself. The chief idea of one very common type of traveller is to see as many objects of (2)\_\_\_\_\_ as he possibly can. If he can only after his return home say that he has seen such and such a temple, castle, picture gallery, or museum, he is perfectly (3)\_\_\_\_\_. Therefore, when he arrives at a famous city, he (4)\_\_\_\_\_ it, so that he may get over as quickly as possible the task of seeing its principal sights, entered them by name in his notebook as visited or, in his own phraseology 'done', then hurry on to another city which he treats in the same (5)\_\_\_\_\_ way.

**SubQuestion No : 16**

**Q.16 Select the most appropriate option to fill in blank number 1.**

- Ans**  1. appeared  
 2. created  
 3. produced  
 4. ingrained

Question ID : 26433089094  
Status : Answered  
Chosen Option : 2

**Comprehension:**

In the following passage, some words have been deleted. Read the passage carefully and select the most appropriate option to fill in each blank.

The effect (1)\_\_\_\_\_ on the mind by travelling depends entirely on the mind of the traveller and on the way in which he conducts himself. The chief idea of one very common type of traveller is to see as many objects of (2)\_\_\_\_\_ as he possibly can. If he can only after his return home say that he has seen such and such a temple, castle, picture gallery, or museum, he is perfectly (3)\_\_\_\_\_. Therefore, when he arrives at a famous city, he (4)\_\_\_\_\_ it, so that he may get over as quickly as possible the task of seeing its principal sights, entered them by name in his notebook as visited or, in his own phraseology 'done', then hurry on to another city which he treats in the same (5)\_\_\_\_\_ way.

**SubQuestion No : 17**

**Q.17 Select the most appropriate option to fill in blank number 2.**

- Ans**  1. variety  
 2. interest  
 3. rarity  
 4. desire

Question ID : 26433089095  
Status : Answered  
Chosen Option : 1

**Comprehension:**

In the following passage, some words have been deleted. Read the passage carefully and select the most appropriate option to fill in each blank.

The effect (1)\_\_\_\_\_ on the mind by travelling depends entirely on the mind of the traveller and on the way in which he conducts himself. The chief idea of one very common type of traveller is to see as many objects of (2)\_\_\_\_\_ as he possibly can. If he can only after his return home say that he has seen such and such a temple, castle, picture gallery, or museum, he is perfectly (3)\_\_\_\_\_. Therefore, when he arrives at a famous city, he (4)\_\_\_\_\_ it, so that he may get over as quickly as possible the task of seeing its principal sights, entered them by name in his notebook as visited or, in his own phraseology 'done', then hurry on to another city which he treats in the same (5)\_\_\_\_\_ way.

**SubQuestion No : 18**

**Q.18 Select the most appropriate option to fill in blank number 3.**

- Ans**  1. enjoyed  
 2. happy  
 3. amused  
 4. satisfied

Question ID : 26433089096  
Status : Answered  
Chosen Option : 1

**Comprehension:**

In the following passage, some words have been deleted. Read the passage carefully and select the most appropriate option to fill in each blank.

The effect (1)\_\_\_\_\_ on the mind by travelling depends entirely on the mind of the traveller and on the way in which he conducts himself. The chief idea of one very common type of traveller is to see as many objects of (2)\_\_\_\_\_ as he possibly can. If he can only after his return home say that he has seen such and such a temple, castle, picture gallery, or museum, he is perfectly (3)\_\_\_\_\_. Therefore, when he arrives at a famous city, he (4)\_\_\_\_\_ it, so that he may get over as quickly as possible the task of seeing its principal sights, entered them by name in his notebook as visited or, in his own phraseology 'done', then hurry on to another city which he treats in the same (5)\_\_\_\_\_ way.

**SubQuestion No : 19**

**Q.19 Select the most appropriate option to fill in blank number 4.**

- Ans  1. comes across  
 2. visits  
 3. rushes through  
 4. browses through

Question ID : 26433089097  
Status : Answered  
Chosen Option : 1

**Comprehension:**

In the following passage, some words have been deleted. Read the passage carefully and select the most appropriate option to fill in each blank.

The effect (1)\_\_\_\_\_ on the mind by travelling depends entirely on the mind of the traveller and on the way in which he conducts himself. The chief idea of one very common type of traveller is to see as many objects of (2)\_\_\_\_\_ as he possibly can. If he can only after his return home say that he has seen such and such a temple, castle, picture gallery, or museum, he is perfectly (3)\_\_\_\_\_. Therefore, when he arrives at a famous city, he (4)\_\_\_\_\_ it, so that he may get over as quickly as possible the task of seeing its principal sights, entered them by name in his notebook as visited or, in his own phraseology 'done', then hurry on to another city which he treats in the same (5)\_\_\_\_\_ way.

**SubQuestion No : 20**

**Q.20 Select the most appropriate option to fill in blank number 5.**

- Ans  1. nonchalant  
 2. disinterest  
 3. unceremonious  
 4. lack lustre

Question ID : 26433089098  
Status : Answered  
Chosen Option : 3

Section : Part-D-Hindi

**Q.1 नुक्ता बीनी करना। रेखांकित शब्द के स्थान पर मुहावरा होगा-**

- Ans  1. ऋणी  
 2. मिनी  
 3. चीनी  
 4. पीनी

Question ID : 26433062818  
Status : Not Answered  
Chosen Option : --

Q.2 निम्नलिखित में से शुद्ध वाक्य है-

- Ans  1. गोपियों किसन की राह में आंखें बिछाए बैठी थीं।  
 2. गोपियां कृष्ण की राह में आंखें बिछाए बैठी थीं।  
 3. गोपियां कृष्ण की राह में आंखें बिठाकर बैठी थीं।  
 4. गोपियां कृष्ण की रोह में आंखें बिछाए बैठी थीं।

Question ID : 26433066846  
Status : Not Answered  
Chosen Option : --

Q.3 दिए गए वाक्य के रेखांकित शब्द को उचित विकल्प से परिवर्तित करें।

अभी तक हिंदी के अनेक शब्दों की वर्तनी व्यवस्थित नहीं है।

- Ans  1. शाश्वत  
 2. सुगठित  
 3. स्थित  
 4. स्थिर

Question ID : 26433069916  
Status : Not Answered  
Chosen Option : --

Q.4 निम्नलिखित में से कौन-सी, अकर्मक क्रिया नहीं है?

- Ans  1. उगना  
 2. जागना  
 3. खाता  
 4. उड़ना

Question ID : 26433085038  
Status : Not Answered  
Chosen Option : --

Q.5 जो देने योग्य हो।

दिए गए वाक्यांश के लिए एक शब्द होगा-

- Ans  1. अदेय  
 2. देय  
 3. प्रदाता  
 4. निर्दय

Question ID : 26433070055  
Status : Not Answered  
Chosen Option : --

Q.6 निम्न में से किस शब्द में वर्तनी की अशुद्धि है?

- Ans  1. दृष्टि  
 2. आकृष्ट  
 3. व्यावहारिक  
 4. सोडर्षी

Question ID : 26433067110  
Status : Not Answered  
Chosen Option : --



Q.7 निम्न समानार्थी शब्दों में से उचित शब्द का प्रयोग करके दिए गए वाक्य के रिक्त स्थान की पूर्ति करें।  
कैदियों ने अपनी माँगें पूरी न होने पर जेल में \_\_\_\_\_ करने की धमकी दी है।

- Ans  1. अनशन  
 2. व्रत  
 3. फाँका  
 4. उपवास

Question ID : 26433062933  
Status : Not Answered  
Chosen Option : --

Q.8 रेखांकित अंश के स्थान पर सबसे उपयुक्त विकल्प दिए गए विकल्पों में से कौन-सा है?

तलवार एक उपयोगी अस्त्र है।

- Ans  1. शस्त्र  
 2. द्रव्य  
 3. निरस्त्र  
 4. वस्त्र

Question ID : 26433066874  
Status : Not Answered  
Chosen Option : --

Q.9 निम्नलिखित विकल्पों में से कौन-से वाक्य में संख्यावाचक विशेषण का उचित प्रयोग नहीं किया गया है?

- Ans  1. वहीदा बड़ी शैतान लड़की है।  
 2. पाँचवें दिन तक पानी का बरसना जारी रहा।  
 3. शुभम का दिमाग दस गुना तेज चलता है।  
 4. भारत का हर दूसरा आदमी बुद्धिमान है।

Question ID : 26433062969  
Status : Not Answered  
Chosen Option : --

Q.10 वाक्य में रेखांकित शब्द को दिए गए शब्दों में से उचित शब्द से बदलें।  
विषयों में अनुराग होने से सर्वनाश होता है।

- Ans  1. प्रेम  
 2. मैत्री  
 3. आसक्ति  
 4. स्नेह

Question ID : 26433062876  
Status : Not Answered  
Chosen Option : --

Q.11 'असुर' का पर्यायवाची शब्द है-

- Ans  1. दनुज  
 2. कृशानु  
 3. मनुज  
 4. अनुज

Question ID : 26433062913  
Status : Not Answered  
Chosen Option : --

Q.12 'जातीय' शब्द का विलोम क्या होगा?

- Ans
- 1. कुजातीय
  - 2. अनजातीय
  - 3. प्रजातीय
  - 4. विजातीय

Question ID : 26433067094  
Status : Not Answered  
Chosen Option : --

Q.13 सिंह को देखकर मोनू के होश उड़ गए।

रेखांकित शब्द के उचित पर्यायवाची शब्द का चयन कीजिए।

- Ans
- 1. दैत्य
  - 2. व्याघ्र
  - 3. धनद
  - 4. वासव

Question ID : 26433079726  
Status : Not Answered  
Chosen Option : --

Q.14 'जिस पर किसी का नियंत्रण न हो' इस वाक्यांश के लिए सार्थक शब्द है -

- Ans
- 1. निरंकुश
  - 2. नियंत्रित
  - 3. निःस्पृह
  - 4. निरामिष

Question ID : 26433062338  
Status : Not Answered  
Chosen Option : --

Q.15 'घर बसाना' मुहावरे का उचित अर्थ है-

- Ans
- 1. विवाह करना
  - 2. घर में ही रहना
  - 3. घर के अंदर जाना
  - 4. नया घर बनाना

Question ID : 26433065882  
Status : Not Answered  
Chosen Option : --

**Comprehension:**

निम्नलिखित गद्यांश में से कुछ शब्द हटा दिए गए हैं। दिए गए विकल्पों की सहायता से रिक्त स्थानों की पूर्ति कीजिए। प्रत्येक संख्या के लिए उपयुक्त विकल्प का चयन कीजिए।

मेरा विचार है 1. \_\_\_\_\_ एक ही खुराक 2. \_\_\_\_\_ के बाद तबीयत ठीक 3. \_\_\_\_\_ जाएगी। कभी-कभी हवा रुक 4. \_\_\_\_\_ है और फंदा डाल लेती है। बस 5. \_\_\_\_\_ की ऐंठन है।

**SubQuestion No : 16****Q.16 रिक्त स्थान 1 की पूर्ति के लिए सर्वाधिक उपयुक्त विकल्प का चयन कीजिए।**

- Ans  1. का  
 2. कि  
 3. की  
 4. के

Question ID : 26433069756  
Status : Not Answered  
Chosen Option : --

**Comprehension:**

निम्नलिखित गद्यांश में से कुछ शब्द हटा दिए गए हैं। दिए गए विकल्पों की सहायता से रिक्त स्थानों की पूर्ति कीजिए। प्रत्येक संख्या के लिए उपयुक्त विकल्प का चयन कीजिए।

मेरा विचार है 1. \_\_\_\_\_ एक ही खुराक 2. \_\_\_\_\_ के बाद तबीयत ठीक 3. \_\_\_\_\_ जाएगी। कभी-कभी हवा रुक 4. \_\_\_\_\_ है और फंदा डाल लेती है। बस 5. \_\_\_\_\_ की ऐंठन है।

**SubQuestion No : 17****Q.17 रिक्त स्थान 2 की पूर्ति के लिए सर्वाधिक उपयुक्त विकल्प का चयन कीजिए।**

- Ans  1. पीया  
 2. पीने  
 3. पीना  
 4. पीनी

Question ID : 26433069757  
Status : Not Answered  
Chosen Option : --

**Comprehension:**

निम्नलिखित गद्यांश में से कुछ शब्द हटा दिए गए हैं। दिए गए विकल्पों की सहायता से रिक्त स्थानों की पूर्ति कीजिए। प्रत्येक संख्या के लिए उपयुक्त विकल्प का चयन कीजिए।

मेरा विचार है 1. \_\_\_\_\_ एक ही खुराक 2. \_\_\_\_\_ के बाद तबीयत ठीक 3. \_\_\_\_\_ जाएगी। कभी-कभी हवा रुक 4. \_\_\_\_\_ है और फंदा डाल लेती है। बस 5. \_\_\_\_\_ की ऐंठन है।

**SubQuestion No : 18****Q.18 रिक्त स्थान 3 की पूर्ति के लिए सर्वाधिक उपयुक्त विकल्प का चयन कीजिए।**

- Ans  1. होगी  
 2. ही  
 3. होनी  
 4. हो

Question ID : 26433069758  
Status : Not Answered  
Chosen Option : --

**Comprehension:**

निम्नलिखित गद्यांश में से कुछ शब्द हटा दिए गए हैं। दिए गए विकल्पों की सहायता से रिक्त स्थानों की पूर्ति कीजिए। प्रत्येक संख्या के लिए उपयुक्त विकल्प का चयन कीजिए।

मेरा विचार है 1. \_\_\_\_\_ एक ही खुराक 2. \_\_\_\_\_ के बाद तबीयत ठीक 3. \_\_\_\_\_ जाएगी। कभी-कभी हवा रुक 4. \_\_\_\_\_ है और फंदा डाल लेती है। बस 5. \_\_\_\_\_ की ऐंठन है।

**SubQuestion No : 19**

**Q.19 रिक्त स्थान 4 की पूर्ति के लिए सर्वाधिक उपयुक्त विकल्प का चयन कीजिए।**

- Ans**
- 1. जानी
  - 2. जाते
  - 3. जाती
  - 4. जाता

Question ID : 26433069759  
Status : Not Answered  
Chosen Option : --

**Comprehension:**

निम्नलिखित गद्यांश में से कुछ शब्द हटा दिए गए हैं। दिए गए विकल्पों की सहायता से रिक्त स्थानों की पूर्ति कीजिए। प्रत्येक संख्या के लिए उपयुक्त विकल्प का चयन कीजिए।

मेरा विचार है 1. \_\_\_\_\_ एक ही खुराक 2. \_\_\_\_\_ के बाद तबीयत ठीक 3. \_\_\_\_\_ जाएगी। कभी-कभी हवा रुक 4. \_\_\_\_\_ है और फंदा डाल लेती है। बस 5. \_\_\_\_\_ की ऐंठन है।

**SubQuestion No : 20**

**Q.20 रिक्त स्थान 5 की पूर्ति के लिए सर्वाधिक उपयुक्त विकल्प का चयन कीजिए।**

- Ans**
- 1. उनके
  - 2. उसी
  - 3. उसके
  - 4. उसकी

Question ID : 26433069760  
Status : Not Answered  
Chosen Option : --

KD Job Updates

## Constable GD in CAPFs SSF Rifleman GD in Assam Rifles and Sepoy in NCB Examination 2022

Roll Number	@Qmaths Telegram Channel
Candidate Name	@Qmaths Telegram Channel
Venue Name	ION Digital Zone iDZ 1 Sector 62
Exam Date	02/02/2023
Exam Time	9:00 AM - 10:00 AM
Subject	Constable GD Examination 2022

### Section : Part-A-General Intelligence and Reasoning

Q.1 Seven people, A, B, C, D, E, F and G are sitting in a straight row, facing north. A sits second from the left. Only two people sit between A and C. Only three people sit between D and F and D is an immediate neighbour of A. B is an immediate neighbour of D and E is not an immediate neighbour of C. How many people sit between A and G?

- Ans
- 1. 4
  - 2. 1
  - 3. 2
  - 4. 3

Question ID : 26433056934

Status : Answered

Chosen Option : 4

Q.2 Which of the following numbers will replace the question mark (?) in the given series?  
1, 3, 6, ?, 20, 37

- Ans
- 1. 8
  - 2. 11
  - 3. 12
  - 4. 9

Question ID : 26433080720

Status : Answered

Chosen Option : 2

Q.3 Six students are sitting around a circular table facing the centre. F is an immediate neighbour of A. D sits second to the right of E. B is an immediate neighbour of E and sits second to the right of C. F sits second to the right of D. A is not an immediate neighbour of E. Who sit between E and A from the right of A?

- Ans
- 1. C and B
  - 2. D and C
  - 3. F and C
  - 4. F and B

Question ID : 26433092768

Status : Answered

Chosen Option : 3

Q.4 In a certain code language, 'DEVOUR' is written as 'WGEQFT' and 'VARIED' is written as 'ECIKVF'. How will 'BLANKET' be written in that language?

- Ans
- 1. ZNUMCHA
  - 2. YMZPQGH
  - 3. YNZPPGG
  - 4. ZYNPPGG

Question ID : 26433069463  
Status : Answered  
Chosen Option : 3

Q.5 Which of the following numbers will replace the question mark (?) in the given series?  
10, 27, 78, 231, ?, 2067

- Ans
- 1. 640
  - 2. 656
  - 3. 690
  - 4. 665

Question ID : 26433076750  
Status : Answered  
Chosen Option : 3

Q.6 Which two signs should be interchanged to make the below equation mathematically correct?

$$54 + 18 \div 9 - 36 \times 16 = 88$$

- Ans
- 1. ÷ and +
  - 2. + and -
  - 3. × and +
  - 4. ÷ and ×

Question ID : 264330117537  
Status : Answered  
Chosen Option : 3

Q.7 Select the option that is related to the third term in the same way as the second term is related to the first term.

MEMBRANE : LDLAQZMD :: PRIVILEGE : ?

- Ans
- 1. GFDHUHKDFD
  - 2. HGHUHKDFD
  - 3. QSHUHKDFD
  - 4. OQHUHKDFD

Question ID : 26433067262  
Status : Answered  
Chosen Option : 4

Q.8 Which letter-cluster will replace the question mark (?) to complete the given series?  
CPFG, ENHE, ?, IJLA, KHNY

- Ans
- 1. GLKC
  - 2. GLKD
  - 3. GLJC
  - 4. GLLC

Question ID : 26433068571  
Status : Answered  
Chosen Option : 3

Q.9 If '-' means 'division', '+' means 'multiplication', 'x' means 'addition' and '÷' means 'subtraction', which of the following equations is correct?

- Ans  1.  $10 + 3 - 2 \times 9 \div 2 = 21$   
 2.  $20 - 4 + 6 \div 9 \times 4 = 25$   
 3.  $10 \div 2 + 3 \div 9 \times 2 = 8$   
 4.  $20 + 6 - 4 \times 9 \div 6 = 32$

Question ID : 26433085660  
Status : Answered  
Chosen Option : 2

Q.10 Which option represents the correct order of the given words as they would appear in the English dictionary?

- 1 pilot
- 2 pivot
- 3 pipette
- 4 pigeon
- 5 pigment

- Ans  1. 5,4,1,2,3  
 2. 4,3,1,2,5  
 3. 5,2,3,1,4  
 4. 4,5,1,3,2

Question ID : 26433069314  
Status : Answered  
Chosen Option : 4

Q.11 Select the option that is related to the fifth letter-cluster in the same way as the second letter-cluster is related to the first letter-cluster and the fourth letter-cluster is related to the third letter-cluster.

ACBO : PCDB :: JLKM : NLMK :: KJIH : ?

- Ans  1. JIKL  
 2. JILK  
 3. IJKL  
 4. IJLK

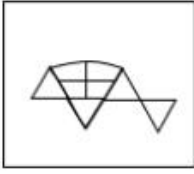
Question ID : 26433080464  
Status : Answered  
Chosen Option : 3

Q.12 Select the option in which question figure is embedded (Rotation is not allowed)



Ans

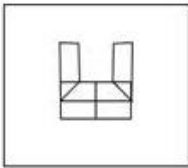
✗ 1.



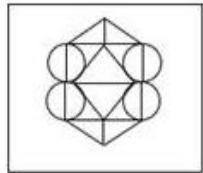
✗ 2.



✗ 3.



✓ 4.



Question ID : 26433070208  
Status : Answered  
Chosen Option : 4

Q.13 एक फोटो को देखते हुए मारिया ने कहा "वह मेरी माँ की माँ की इकलौती बेटी है"। मारिया फोटो में दिख रहे व्यक्ति से किस प्रकार संबंधित है?

Ans

✗ 1. मौसी

✗ 2. बुआ

✓ 3. बेटी

✗ 4. बहन

Question ID : 26433074602  
Status : Answered  
Chosen Option : 3



**Q.14** Three statements are given followed by three conclusions numbered I, II and III. Assuming the statements to be true, even if they seem to be at variance with commonly known facts, decide which of the conclusions logically follow(s) from the statements.

Statements:

All beds are tables.

All cots are tables.

All tables are taps.

Conclusions:

I. All cots are taps.

II. Some taps are tables.

III. Some beds are cots.

- Ans**
- 1. Only conclusions I and III follow
  - 2. All conclusions follow
  - 3. Only conclusions I and II follow
  - 4. Only conclusions II and III follow

Question ID : 26433082314

Status : Answered

Chosen Option : 3

**Q.15** Which of the following letter-clusters will replace the question mark (?) in the given series?

XTEB, UQHE, RNKH, ?, LHQN

- Ans**
- 1. PKOK
  - 2. OKOK
  - 3. PKNJ
  - 4. OKNK

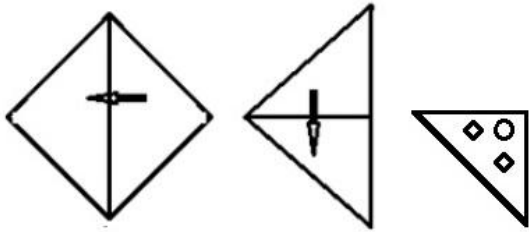
Question ID : 26433076441

Status : Answered

Chosen Option : 4

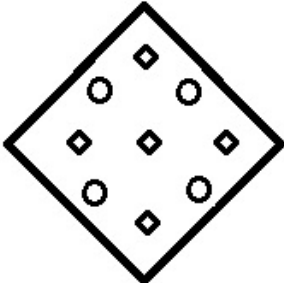
KD Job Updates

Q.16 A paper is folded and cut as shown below. How will it appear when unfolded?




Ans

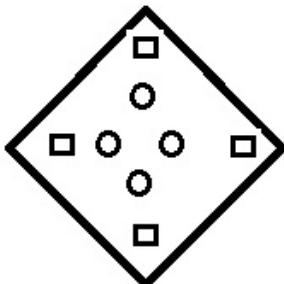
✗ 1.



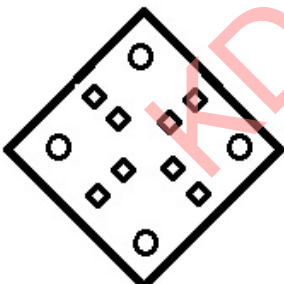
✓ 2.



✗ 3.



✗ 4.



Question ID : 26433082339  
Status : Answered  
Chosen Option : 2

Q.17 Select the correct mirror image of the given figure when the mirror is placed at MN as shown below.

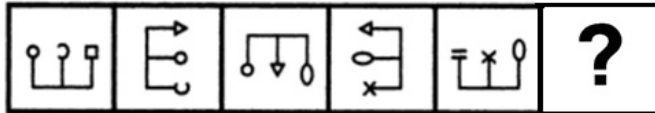


Ans

- ✗ 1. QuesTiOonnaiRe
- ✗ 2. QuesTiOonnaiRe
- ✓ 3. eUesTiOonnaiRq
- ✗ 4. eUesTiOonnaiRq

Question ID : 26433085548  
 Status : Answered  
 Chosen Option : 3

Q.18 Select the figure from among the given options that can replace the question mark (?) in the following series.



Ans

- ✗ 1. [Option 1: Vertical line with circle on left, square on right, rotated 90 degrees clockwise]
- ✓ 2. [Option 2: Vertical line with circle on left, square on right, rotated 180 degrees]
- ✗ 3. [Option 3: Vertical line with circle on left, square on right, rotated 270 degrees]
- ✗ 4. [Option 4: Vertical line with circle on left, square on right, rotated 90 degrees counter-clockwise]

KD Job Updates

Question ID : 26433080491  
 Status : Marked For Review  
 Chosen Option : 2

**Q.19** Select the option that is related to the fourth term in the same way as the first term is related to the second term and the fifth term is related to the sixth term.  
18 : 45 :: ? : 60 :: 30 : 75

- Ans
- 1. 26
  - 2. 22
  - 3. 20
  - 4. 24

Question ID : 26433069098  
Status : Answered  
Chosen Option : 4

**Q.20** In a code language, 'dark colors' is coded as 'yu nu', 'days are bright' is coded as 'wu tu ku', 'nights are dark' is coded as 'ku nu pu', 'paint bright' is coded as 'wu ru'. What is the code for the word 'days'?

- Ans
- 1. wu
  - 2. ku
  - 3. tu
  - 4. ru

Question ID : 26433082273  
Status : Answered  
Chosen Option : 3

Section : Part-B-General Knowledge and General awareness

**Q.1** On the basis of status of development, how are resources classified?

- Ans
- 1. Biotic and abiotic
  - 2. Renewable and non-renewable
  - 3. Individual, international and national
  - 4. Potential, developed stock and reserves

Question ID : 26433087887  
Status : Answered  
Chosen Option : 2

**Q.2** The 101st constitution amendment act of the Indian Constitution introduced the system of \_\_\_\_\_.

- Ans
- 1. one nation, one tax'
  - 2. one nation, one income'
  - 3. one individual, one tax'
  - 4. one individual, one rate'

Question ID : 264330116210  
Status : Answered  
Chosen Option : 1

**Q.3** Sunanda Nair completed her PhD from University of Mumbai for her thesis in "Intrinsic Lyrical Feminism" in which dance form?

- Ans
- 1. Mohiniattam
  - 2. Kuchipudi
  - 3. Bharatnatyam
  - 4. Kathakali

Question ID : 264330115864  
Status : Not Answered  
Chosen Option : --

**Q.4 Who was appointed as the chairperson of Law Commission of India in November 2022?**

- Ans**
- 1. N. K. Singh
  - 2. S.Siva Kumar
  - 3. Justice Ravi R. Tripathi
  - 4. Justice Rituraj Awasthi

Question ID : 264330115027  
Status : Answered  
Chosen Option : 3

**Q.5 Which of the following statements is NOT correct about the Joint Session of the Parliament of India?**

- Ans**
- 1. So far, Joint sittings of the two Houses have taken place on three occasions.
  - 2. The President can summon both the Houses to meet for the Joint Session.
  - 3. The Chairman of Rajya Sabha (Vice President) presides over a Joint Session.
  - 4. Joint session is held to resolve a deadlock between the two Houses of the Parliament.

Question ID : 26433079562  
Status : Answered  
Chosen Option : 3

**Q.6 As of November 2022, who is the President of Nationalist Congress Party, a political party in India?**

- Ans**
- 1. Supriya Sule
  - 2. Nawab Malik
  - 3. Eknath Shinde
  - 4. Sharad Pawar

Question ID : 264330114945  
Status : Answered  
Chosen Option : 4

**Q.7 Which of the following dances is performed by women from the countryside villages of Malwa region in Madhya Pradesh?**

- Ans**
- 1. Padyani
  - 2. Matki dance
  - 3. Thirayattam
  - 4. Dandia Raas

Question ID : 26433071690  
Status : Answered  
Chosen Option : 1

**Q.8 Export of manufactured goods \_\_\_\_\_ trade and commerce.**

- Ans**
- 1. reduces
  - 2. expands
  - 3. contracts
  - 4. weakens

Question ID : 264330115409  
Status : Answered  
Chosen Option : 2

**Q.9 Which of the following is an INCORRECT match, concerning players and the State/UT they were born?**

- Ans**
- 1. Anjum Chopra – New Delhi
  - 2. Saina Nehwal – Haryana
  - 3. Sania Mirza – Maharashtra
  - 4. Mithali Raj – Tamil Nadu

Question ID : 26433089932  
Status : Answered  
Chosen Option : 4

**Q.10 The chemical formula of washing soda is \_\_\_\_\_.**

- Ans**
- 1.  $\text{Na}_2\text{CO}_3 \cdot 10\text{H}_2\text{O}$
  - 2.  $\text{Ca}(\text{OH})_2$
  - 3.  $\text{Na}_2\text{SO}_4$
  - 4.  $\text{NaHCO}_3$

Question ID : 26433089648  
Status : Answered  
Chosen Option : 4

**Q.11 Which of the following is NOT an example of a public sector company?**

- Ans**
- 1. SAIL
  - 2. NSE
  - 3. ONGC
  - 4. BHEL

Question ID : 26433054785  
Status : Answered  
Chosen Option : 2

**Q.12 Currency notes and coins are called fiat money. They are also called \_\_\_\_\_.**

- Ans**
- 1. Legal contract
  - 2. Lease deed
  - 3. Loan deed
  - 4. Legal tender

Question ID : 264330115324  
Status : Answered  
Chosen Option : 1

**Q.13 The fundamental duties are defined under which Article of the Indian Constitution?**

- Ans**
- 1. 53A
  - 2. 50A
  - 3. 51A
  - 4. 52A

Question ID : 26433089950  
Status : Answered  
Chosen Option : 4

**Q.14 Bajrang Punia won the Bronze Medal by defeating Daulet Niyazbekov in which tournament?**

- Ans**
- 1. London Olympics 2012
  - 2. Tokyo Olympics 2020
  - 3. Asian Games 2014
  - 4. Commonwealth Games 2014

Question ID : 264330116278  
Status : Answered  
Chosen Option : 2

**Q.15 The cytoplasm has \_\_\_\_\_ such as ribosomes, mitochondria, and golgi bodies.**

- Ans**
- 1. organelles
  - 2. cells
  - 3. organs
  - 4. tissues

Question ID : 264330115243  
Status : Answered  
Chosen Option : 1

**Q.16 Who among the following was the founder of the Vakataka Dynasty?**

- Ans**
- 1. Pravarasena I
  - 2. Vindhyaashakti
  - 3. Pravarasena II
  - 4. Prabhavati Gupta

Question ID : 264330115463  
Status : Answered  
Chosen Option : 3

**Q.17 Buddha Purnima, celebrated by the devotees of Gautam Buddha, is celebrated in the Hindu month of \_\_\_\_\_.**

- Ans**
- 1. Chaitra
  - 2. Vaisakha
  - 3. Phalguna
  - 4. Magha

Question ID : 264330115121  
Status : Answered  
Chosen Option : 3

**Q.18 In 1928, the \_\_\_\_\_ was founded at a meeting in Ferozeshah Kotla ground in Delhi. Amongst its leaders were Bhagat Singh, Jatin Das and Ajoy Ghosh.**

- Ans**
- 1. All India Depressed Classes Association
  - 2. Madras Presidency Association
  - 3. Kabui Naga Association
  - 4. Hindustan Socialist Republican Association

Question ID : 264330115705  
Status : Answered  
Chosen Option : 4

Q.19 West Bengal shares its longest border with which country?

- Ans
- 1. Bhutan
  - 2. Nepal
  - 3. Myanmar
  - 4. Bangladesh

Question ID : 264330116102  
Status : Answered  
Chosen Option : 2

Q.20 Three of the following four are auxiliaries to trade, and therefore form a group. Which is the one that does not belong to that group?

- Ans
- 1. Warehousing
  - 2. Transportation
  - 3. Insurance
  - 4. Agriculture

Question ID : 264330115571  
Status : Answered  
Chosen Option : 3

Section : Part-C-Elementary Mathematics

Q.1 The price of a car increases successively by 5%, 10% and 20%, respectively. What is the equivalent change in the price?

- Ans
- 1.  $34\frac{4}{5}\%$
  - 2.  $32\frac{1}{5}\%$
  - 3.  $38\frac{3}{5}\%$
  - 4.  $33\frac{3}{5}\%$

Question ID : 26433076071  
Status : Answered  
Chosen Option : 3

Q.2 A river is running at 2 kmph. A boat goes 40 km upstream from A to B and also returns back from B to A in total 10 hours. The speed of the boat in still water is:

- Ans
- 1. 6.23 kmph
  - 2. 7.97 kmph
  - 3. 7.32 kmph
  - 4. 8.47 kmph

Question ID : 26433080242  
Status : Not Answered  
Chosen Option : --



Q.3 A trader gives two successive discounts of 18% and 20%. If the marked price is ₹11,000, then the selling price is:

- Ans
- 1. ₹6,926
  - 2. ₹6,716
  - 3. ₹7,926
  - 4. ₹7,216

Question ID : 26433080110  
Status : Answered  
Chosen Option : 4

Q.4 In a race of 1000 m, John beats Khan by 120 m. If the speed of John is 40 km/h, then the speed of Khan is:

- Ans
- 1. 28.5 km/h
  - 2. 38.7 km/h
  - 3. 27 km/h
  - 4. 35.2 km/h

Question ID : 26433061169  
Status : Answered  
Chosen Option : 4

Q.5 A can repair 11 benches in an hour and B can repair 5 benches in an hour. Determine how much time they will require to repair 64 benches when they work together?

- Ans
- 1. 3 hours
  - 2. 4 hours
  - 3. 5 hours
  - 4. 6 hours

Question ID : 26433080140  
Status : Answered  
Chosen Option : 2

Q.6 Akash can do a piece of work in 21 days and Diya can do the same work in 63 days. Find the time required to complete the same work if they work on alternate days and Akash starts the work.

- Ans
- 1. 31 days
  - 2. 28 days
  - 3. 29 days
  - 4. 27 days

Question ID : 264330116894  
Status : Answered  
Chosen Option : 1

Q.7 In two ways, a shopkeeper deceives his customer. He dilutes pure honey by 20% with water and raises the price of honey by 15%. He pays Rs.30 per kg for 40 kg of pure honey. What is his total profit from selling it?

- Ans
- 1. Rs.456
  - 2. Rs.468
  - 3. Rs.422
  - 4. Rs.435

Question ID : 26433075848  
Status : Not Answered  
Chosen Option : --

**Q.8** In a trip, Kiran travelled 50 miles per hour for 3 hours on bike. Further he travelled by car for 2 hours at 65 miles per hour. He stopped for 2 hours for rest. After rest he travelled on bike for 4 hours at 80 miles per hour to reach his destination. Find Kiran's average speed for the entire journey. (in miles per hour) (Rounded off to two places of decimals)

- Ans**  1. 54.54  
 2. 65.68  
 3. 60.06  
 4. 50.44

Question ID : 26433079915  
Status : Not Answered  
Chosen Option : --

**Q.9** In 2010, the population of a country was 256080000. By 2020, the population had increased by 10 percent. The population in 2020 is:

- Ans**  1. 291475000  
 2. 281688000  
 3. 275040000  
 4. 266050000

Question ID : 264330116814  
Status : Answered  
Chosen Option : 2

**Q.10** What will be the volume of the largest sphere which can be carved out of a cube of side 6 cm?

- Ans**  1.  $102.26 \text{ cm}^3$   
 2.  $113.14 \text{ cm}^3$   
 3.  $112.15 \text{ cm}^3$   
 4.  $115.13 \text{ cm}^3$

Question ID : 26433066328  
Status : Not Answered  
Chosen Option : --

**Q.11** The present population of a village is 50,000. Due to migration to cities, the population decreases at the rate of 5% every year. Find the population of the village after 2 years.

- Ans**  1. 41525  
 2. 48475  
 3. 45125  
 4. 44875

Question ID : 26433092027  
Status : Answered  
Chosen Option : 3

Q.12 If  $3\frac{1}{3} \div 6\frac{3}{7} \times 1\frac{1}{2} \times 3\frac{1}{7} = (p)^{1/2}$ , then the value of 'p' is:

Ans

1.  $\frac{22}{9}$

2.  $\frac{22}{3}$

3.  $\frac{484}{3}$

4.  $\frac{484}{81}$

Question ID : 26433075135  
Status : Answered  
Chosen Option : 4

Q.13 If the rate of interest be 16% per annum for the first year, 20% per annum for the second year and 15% per annum for the third year, then find the compound interest on Rs.15,000 for three years.

Ans

1. Rs.8,012

2. Rs.9,012

3. Rs.8,015

4. Rs.9,015

Question ID : 26433064988  
Status : Answered  
Chosen Option : 2

Q.14 If the third proportional to 8 and 24 is 'A' and the mean proportional of 4 and 16 is 'B', then the value of  $\frac{A}{B}$  is:

Ans

1. 10

2. 12

3. 8

4. 9

Question ID : 26433082393  
Status : Answered  
Chosen Option : 4

Q.15 The marked price of a mobile phone is ₹16,500. A festival discount of 8% is allowed on it. Further, for cash payment a second discount of 5% is given. The cash payment, in rupees, that is to be made for buying the mobile phone is:

Ans

1. ₹14,671

2. ₹14,872

3. ₹14,512

4. ₹14,421

Question ID : 26433092168  
Status : Answered  
Chosen Option : 4

**Q.16** A hemispherical bowl is made of thick steel having thickness 0.5 cm. If the external diameter of the bowl is 43 cm, then the capacity of the bowl is:

(Use  $\pi = \frac{22}{7}$ )

- Ans**
- 1. 19404 cm<sup>3</sup>
  - 2. 38808 cm<sup>3</sup>
  - 3. 77616 cm<sup>3</sup>
  - 4. 3696 cm<sup>3</sup>

Question ID : 26433087409  
Status : Not Answered  
Chosen Option : --

**Q.17** Find the LCM of the greatest 2-digit number divisible by 12 and the smallest 2-digit number divisible by 8.

- Ans**
- 1. 96
  - 2. 192
  - 3. 48
  - 4. 384

Question ID : 264330116662  
Status : Answered  
Chosen Option : 1

**Q.18** A grocer sells rice at a profit of 15% and uses weights that are 20% less than the market weights. The total profit earned by him will be:

- Ans**
- 1. 45.37%
  - 2. 53.74%
  - 3. 47.35%
  - 4. 43.75%

Question ID : 26433073009  
Status : Answered  
Chosen Option : 4

**Q.19** The third proportional to 0.1 and 0.12 is :

- Ans**
- 1. 0.24
  - 2. 0.124
  - 3. 0.122
  - 4. 0.144

Question ID : 26433081715  
Status : Answered  
Chosen Option : 4

Q.20 A woman covers a certain distance by car at 75 km/h and immediately returns by the same car to the starting point at 100 km/h. What is the average speed of the car?

Ans

1.  $95\frac{2}{7}$  km/h

2.  $85\frac{5}{7}$  km/h

3.  $93\frac{3}{7}$  km/h

4.  $86\frac{3}{7}$  km/h

Question ID : 26433076070

Status : Answered

Chosen Option : 2

Section : Part-D-English

Q.1 Parts of the following sentence have been given as options. One of them may contain an error. Select the part that contains the error from the given options. If you don't find any error, mark 'No error' as your answer.

The old man think his younger daughter was mocking him.

Ans  1. his younger daughter

2. was mocking him

3. No error

4. The old man think

Question ID : 26433090484

Status : Answered

Chosen Option : 4

Q.2 Select the most appropriate option to fill in the blank.

The article \_\_\_\_\_ several experts on the subject.

Ans  1. sights

2. cites

3. sites

4. sits

Question ID : 26433060331

Status : Answered

Chosen Option : 1

Q.3 Select the most appropriate option that can substitute the underlined segment in the given sentence.

During an office tour to Mumbai, I chanced to meet an old friend.

Ans  1. ran down

2. ran into

3. ran over

4. ran about

Question ID : 26433089092

Status : Answered

Chosen Option : 4

Q.4 Select the most appropriate ANTONYM of the given word.

Steady

- Ans
- 1. Contrived
  - 2. Voluntary
  - 3. Undeviating
  - 4. Wavering

Question ID : 26433084687  
Status : Answered  
Chosen Option : 4

Q.5 Substitute the underline word with its appropriate synonym.

The crew of the ship was attacked.

- Ans
- 1. worshipped
  - 2. synced
  - 3. saved
  - 4. assaulted

Question ID : 26433073935  
Status : Answered  
Chosen Option : 4

Q.6 Parts of the given sentence have been given as options. One of them contains a spelling error. Select the option that rectifies the error.

According to a study by BBC across 66 different sports, five out of every six sports now give equal prize money to men and women at the world champonship level.

- Ans
- 1. wumen
  - 2. diferent
  - 3. akcross
  - 4. championship

Question ID : 26433072040  
Status : Answered  
Chosen Option : 4

Q.7 Select the most appropriate option that can substitute the underlined segment in the given sentence.

Everyone was shocked to see the old man upset and unkempt.

- Ans
- 1. messy and untidy
  - 2. up and doing
  - 3. proud and useless
  - 4. violent and rigorous

Question ID : 26433099873  
Status : Answered  
Chosen Option : 1

**Q.8** Select the most appropriate **ANTONYM** of the given word.  
**Realm**

- Ans**  1. Sky  
 2. Activity  
 3. Kingdom  
 4. Domain

Question ID : 26433084749  
Status : Answered  
Chosen Option : 4

**Q.9** Select the most appropriate meaning of the given idiom.

**In the fast lane**

- Ans**  1. In great excitement  
 2. In complete fear  
 3. In terrific speed  
 4. In perfect discipline

Question ID : 26433073482  
Status : Answered  
Chosen Option : 1

**Q.10** Select the most appropriate synonym for the given word.

**False**

- Ans**  1. Unfair  
 2. Genuine  
 3. Correct  
 4. Untrue

Question ID : 26433086372  
Status : Answered  
Chosen Option : 1

**Q.11** Select the most appropriate synonym of the given word.

**Enmity**

- Ans**  1. Probability  
 2. Pretext  
 3. Variability  
 4. Hostility

Question ID : 26433084666  
Status : Answered  
Chosen Option : 4

**Q.12** Select the most appropriate option to fill in the blank.

**Neha has \_\_\_\_\_ and won't come to work for a few days.**

- Ans**  1. floo  
 2. flu  
 3. flue  
 4. flew

Question ID : 26433088940  
Status : Answered  
Chosen Option : 2

Q.13 Select the most appropriate meaning of the given idiom.

**Penny wise and pound foolish**

- Ans  1. Serious about wealth but never working hard  
 2. Writing powerfully but speaking poorly  
 3. Careful in trivial matters but wasteful in large  
 4. Good at spending but bad at earning

Question ID : 26433073491  
Status : Answered  
Chosen Option : 4

Q.14 Select the word segment that substitutes (replaces) the bracketed word segment correctly and completes the sentence meaningfully.

After the teacher chose groups, John and Sara (was selected as partners for project), yet Sarah did most of the work.

- Ans  1. have selected as a partners for a project  
 2. were selected as partners for a project  
 3. has selected as a partner for a project  
 4. had selected as partners for project

Question ID : 26433088963  
Status : Answered  
Chosen Option : 4

Q.15 Select the INCORRECTLY spelt word.

- Ans  1. Coutious  
 2. Irrational  
 3. Intelligent  
 4. Excessive

Question ID : 26433087934  
Status : Answered  
Chosen Option : 1

**Comprehension:**

In the following passage some words have been deleted. Fill in the blanks with the help of the alternatives given. Select the most appropriate option for each number.

Summer camp is a terrific idea used primarily by schools to (1)\_\_\_\_\_ pupils to acquire and master new skills. It is an (2)\_\_\_\_\_ outdoor activity. Many parents offer to enrol their kids in summer camps so they can participate in (3)\_\_\_\_\_ activities, discover their talents and passions, and broaden their horizons. Summer camps are (4)\_\_\_\_\_ for all children for ten to fifteen days by various schools or other organisations. These summer camps (5)\_\_\_\_\_ entertaining educational activities like fitness classes, hobby improvement classes, learning lectures, sports activities, musical performances, etc. The pupils' general development and growth are benefitted from these summer camps.

**SubQuestion No : 16**

Q.16 Select the most appropriate answer for blank 1.

- Ans  1. assist  
 2. accelerate  
 3. examine  
 4. hinder

Question ID : 26433089700  
Status : Answered  
Chosen Option : 1



**Comprehension:**

In the following passage some words have been deleted. Fill in the blanks with the help of the alternatives given. Select the most appropriate option for each number.

Summer camp is a terrific idea used primarily by schools to (1)\_\_\_\_\_ pupils to acquire and master new skills. It is an (2)\_\_\_\_\_ outdoor activity. Many parents offer to enrol their kids in summer camps so they can participate in (3)\_\_\_\_\_ activities, discover their talents and passions, and broaden their horizons. Summer camps are (4)\_\_\_\_\_ for all children for ten to fifteen days by various schools or other organisations. These summer camps (5)\_\_\_\_\_ entertaining educational activities like fitness classes, hobby improvement classes, learning lectures, sports activities, musical performances, etc. The pupils' general development and growth are benefitted from these summer camps.

**SubQuestion No : 17**

**Q.17 Select the most appropriate answer for blank 2.**

- Ans  1. omitted  
 2. organised  
 3. assembled  
 4. aggravated

Question ID : 26433089701  
Status : Answered  
Chosen Option : 2

**Comprehension:**

In the following passage some words have been deleted. Fill in the blanks with the help of the alternatives given. Select the most appropriate option for each number.

Summer camp is a terrific idea used primarily by schools to (1)\_\_\_\_\_ pupils to acquire and master new skills. It is an (2)\_\_\_\_\_ outdoor activity. Many parents offer to enrol their kids in summer camps so they can participate in (3)\_\_\_\_\_ activities, discover their talents and passions, and broaden their horizons. Summer camps are (4)\_\_\_\_\_ for all children for ten to fifteen days by various schools or other organisations. These summer camps (5)\_\_\_\_\_ entertaining educational activities like fitness classes, hobby improvement classes, learning lectures, sports activities, musical performances, etc. The pupils' general development and growth are benefitted from these summer camps.

**SubQuestion No : 18**

**Q.18 Select the most appropriate answer for blank 3.**

- Ans  1. much  
 2. more  
 3. few  
 4. numerous

Question ID : 26433089702  
Status : Answered  
Chosen Option : 4

**Comprehension:**

In the following passage some words have been deleted. Fill in the blanks with the help of the alternatives given. Select the most appropriate option for each number.

Summer camp is a terrific idea used primarily by schools to (1)\_\_\_\_\_ pupils to acquire and master new skills. It is an (2)\_\_\_\_\_ outdoor activity. Many parents offer to enrol their kids in summer camps so they can participate in (3)\_\_\_\_\_ activities, discover their talents and passions, and broaden their horizons. Summer camps are (4)\_\_\_\_\_ for all children for ten to fifteen days by various schools or other organisations. These summer camps (5)\_\_\_\_\_ entertaining educational activities like fitness classes, hobby improvement classes, learning lectures, sports activities, musical performances, etc. The pupils' general development and growth are benefitted from these summer camps.

**SubQuestion No : 19****Q.19 Select the most appropriate answer for blank 4.****Ans**  1. performed 2. quoted 3. executed 4. held

Question ID : 26433089703

Status : Answered

Chosen Option : 4

**Comprehension:**

In the following passage some words have been deleted. Fill in the blanks with the help of the alternatives given. Select the most appropriate option for each number.

Summer camp is a terrific idea used primarily by schools to (1)\_\_\_\_\_ pupils to acquire and master new skills. It is an (2)\_\_\_\_\_ outdoor activity. Many parents offer to enrol their kids in summer camps so they can participate in (3)\_\_\_\_\_ activities, discover their talents and passions, and broaden their horizons. Summer camps are (4)\_\_\_\_\_ for all children for ten to fifteen days by various schools or other organisations. These summer camps (5)\_\_\_\_\_ entertaining educational activities like fitness classes, hobby improvement classes, learning lectures, sports activities, musical performances, etc. The pupils' general development and growth are benefitted from these summer camps.

**SubQuestion No : 20****Q.20 Select the most appropriate answer for blank 5.****Ans**  1. exhibit 2. adapt 3. align 4. arrange

Question ID : 26433089704

Status : Answered

Chosen Option : 2

Section : Part-D-Hindi

**Q.1 'आकाश पाताल एक करना' मुहावरे का सही अर्थ है -****Ans**  1. बहुत मेहनत करना 2. आकाश में उड़ना 3. घमंड करना 4. किसी का नुकसान करना

Question ID : 26433065920

Status : Not Answered

Chosen Option : --

Q.2 वर्तनी की दृष्टि से अशुद्ध वाक्य का चयन कीजिए-

- Ans  1. यदि इसकी तलाशी लोगे तो घड़ी मिल जाएगी।  
 2. यौवन वह काल है जब चरित्र का निर्माण होता है।  
 3. वह इंकार कर देने का परिणाम जानता है।  
 4. स्वस्थ रहने वाले लोगों को वैद्य के पास नहीं जाना पड़ता।

Question ID : 26433062898  
Status : Not Answered  
Chosen Option : --

Q.3 'नाकों चने चबवाना' मुहावरे का सही अर्थ है -

- Ans  1. बातूनी होना  
 2. बहुत तंग करना  
 3. अपनी बातों से परेशान करना  
 4. बहस करना

Question ID : 26433065930  
Status : Not Answered  
Chosen Option : --

Q.4 निम्नलिखित में से कौन सा संज्ञा से बना विशेषण नहीं है?

- Ans  1. अच्छाई  
 2. स्वर्णिम  
 3. श्रद्धालु  
 4. सामाजिक

Question ID : 26433085053  
Status : Not Answered  
Chosen Option : --

Q.5 'द्विज' शब्द के लिए उपयुक्त वाक्य खंड चुनिए।

- Ans  1. दो बार जन्म लेने वाला  
 2. पहले जन्म लेने वाला  
 3. बहुत बोलने वाला  
 4. बहुत जानने वाला

Question ID : 26433063056  
Status : Not Answered  
Chosen Option : --

Q.6 विकल्पों में से 'शशि' के पर्यायवाची शब्द चयन कर दिए गए वाक्य में रिक्त स्थान की पूर्ति कीजिए।  
पूर्णिमा की रात में \_\_\_\_\_ को देखकर हमें बड़ी खुशी हुई।

- Ans  1. शतदल  
 2. पावक  
 3. कृष्णा  
 4. हिमांशु

Question ID : 26433063085  
Status : Not Answered  
Chosen Option : --

Q.7 निम्न वाक्य में रेखांकित शब्द के विलोम से दिए गए वाक्य का रिक्त स्थान पूर्ण करें।  
पुरानी इमारत में भयानक आग लगी है, बुझाने के लिए \_\_\_\_\_ की आवश्यकता है।

- Ans
- 1. बारिश
  - 2. रेत
  - 3. वायु
  - 4. पानी

Question ID : 26433085002  
Status : Not Answered  
Chosen Option : --

Q.8 निम्नलिखित में से किस वाक्य में गुणवाचक विशेषण अशुद्ध है?

- Ans
- 1. इस भवन में तीन द्वार हैं।
  - 2. यह मेरा कुत्ता है।
  - 3. यह एक नया इमारत है।
  - 4. तुम दोनों यहाँ कैसे आये!

Question ID : 26433062995  
Status : Not Answered  
Chosen Option : --

Q.9 निम्नलिखित वाक्य में रेखांकित खंड के स्थान पर प्रयुक्त होने वाले सबसे उपयुक्त विकल्प का चयन कीजिए-

सोहन क्योंकि मोहन जाते हैं।

- Ans
- 1. तथापि
  - 2. साथ
  - 3. परंतु
  - 4. और

Question ID : 26433079661  
Status : Not Answered  
Chosen Option : --

Q.10 हमारे देश से आयात – निर्यात काफी होती है।

इस वाक्य को शुद्ध करके लिखिए।

- Ans
- 1. हमारे देश में आयात – निर्यात काफी होता है।
  - 2. हमारे देश में आयात – निर्यात पर्याप्त होती हैं।
  - 3. हमारा देश को आयात – निर्यात काफी होता है।
  - 4. हमारा देश में आयात – निर्यात होता है।

Question ID : 26433063073  
Status : Not Answered  
Chosen Option : --

Q.11 निम्न विकल्पों में से कौन सा शब्द दिए गए वाक्य में रेखांकित शब्द का पर्यायवाची नहीं है?  
मेरे घर के सामने जो बाग है, वह फूलों और 'लता' से भरा है।

- Ans
- 1. वल्ली
  - 2. बेल
  - 3. वेल्लि
  - 4. तरंग

Question ID : 26433085071  
Status : Not Answered  
Chosen Option : --

Q.12 वह एक उत्तम व्यक्ति है।  
उक्त वाक्य में रेखांकित पद 'उत्तम' का विलोम क्या है?

- Ans  1. शाश्वत  
 2. अधम  
 3. स्वतंत्र  
 4. कृतघ्न

Question ID : 26433079185  
Status : Not Answered  
Chosen Option : --

Q.13 'वह स्थान जहाँ से यमुना निकलती है' वाक्यांश के लिए उचित शब्द होगा?

- Ans  1. उदयांचल  
 2. यमुनोत्री  
 3. अस्तांचल  
 4. गंगोत्री

Question ID : 26433067067  
Status : Not Answered  
Chosen Option : --

Q.14 'जो मुकदमा दायर करता है' वाक्यांश के लिए इनमें से सही शब्द क्या है?

- Ans  1. मुकदमेबाज  
 2. वादी  
 3. प्रतिवादी  
 4. गवाह

Question ID : 26433070150  
Status : Not Answered  
Chosen Option : --

Q.15 निम्नलिखित विकल्पों में से 'आशा से परे' वाक्यांश के लिए एक सार्थक शब्द क्या होगा ?

- Ans  1. आशातीत  
 2. प्रत्याशा  
 3. हताशा  
 4. निराशा

Question ID : 26433062535  
Status : Not Answered  
Chosen Option : --

**Comprehension:**

प्रश्न 1 से 5 तक के उत्तर निम्नांकित गद्यावतरण के आधार पर दीजिए।

किसी देश की संस्कृति को जानने के लिए वहाँ के (1) \_\_\_\_\_ का पूरा अध्ययन नितांत आवश्यक है। साहित्य किसी देश तथा जाति के विकास का प्रतीक है। साहित्य से उस जाति के धार्मिक विचारों, सामाजिक संगठन, ऐतिहासिक घटनाचक्र तथा राजनीतिक परिस्थितियों का प्रतिबिंब मिल जाता है। भारतीय संस्कृति के मूल आधार हमारे साहित्य के (2) \_\_\_\_\_ ग्रंथ - रत्न हैं, जिनके विचारों से भारत की आंतरिक (3) \_\_\_\_\_ का ज्ञान हो जाता है। हमारे देश की बाहरी विविधता भारतीय (4) \_\_\_\_\_ के रूप में बहनेवाली विचार और संस्कृति की एकता को ढक लेती है। वांग्मय की (5) \_\_\_\_\_ एक है, पर वह अनेक भाषाओं, रूपों तथा परिस्थितियों में हमारे सामने आती है।

**SubQuestion No : 16**

Q.16 निम्नलिखित विकल्पों में से सही शब्द चुनकर रिक्त स्थान (1) की पूर्ति कीजिए।

Ans  1. साहित्य

2. राजनीति विज्ञान

3. संस्कृत

4. भूगोल

Question ID : 26433069950

Status : Not Answered

Chosen Option : --

**Comprehension:**

प्रश्न 1 से 5 तक के उत्तर निम्नांकित गद्यावतरण के आधार पर दीजिए।

किसी देश की संस्कृति को जानने के लिए वहाँ के (1) \_\_\_\_\_ का पूरा अध्ययन नितांत आवश्यक है। साहित्य किसी देश तथा जाति के विकास का प्रतीक है। साहित्य से उस जाति के धार्मिक विचारों, सामाजिक संगठन, ऐतिहासिक घटनाचक्र तथा राजनीतिक परिस्थितियों का प्रतिबिंब मिल जाता है। भारतीय संस्कृति के मूल आधार हमारे साहित्य के (2) \_\_\_\_\_ ग्रंथ - रत्न हैं, जिनके विचारों से भारत की आंतरिक (3) \_\_\_\_\_ का ज्ञान हो जाता है। हमारे देश की बाहरी विविधता भारतीय (4) \_\_\_\_\_ के रूप में बहनेवाली विचार और संस्कृति की एकता को ढक लेती है। वांग्मय की (5) \_\_\_\_\_ एक है, पर वह अनेक भाषाओं, रूपों तथा परिस्थितियों में हमारे सामने आती है।

**SubQuestion No : 17**

Q.17 रिक्त स्थान (2) की पूर्ति 'कीमती' के पर्यायवाची शब्द से कीजिए।

Ans  1. अतुल्य

2. अमूल्य

3. दुर्मूल्य

4. बाहुल्य

Question ID : 26433069951

Status : Not Answered

Chosen Option : --

**Comprehension:**

प्रश्न 1 से 5 तक के उत्तर निम्नांकित गद्यावतरण के आधार पर दीजिए।

किसी देश की संस्कृति को जानने के लिए वहाँ के (1) \_\_\_\_\_ का पूरा अध्ययन नितांत आवश्यक है। साहित्य किसी देश तथा जाति के विकास का प्रतीक है। साहित्य से उस जाति के धार्मिक विचारों, सामाजिक संगठन, ऐतिहासिक घटनाचक्र तथा राजनीतिक परिस्थितियों का प्रतिबिंब मिल जाता है। भारतीय संस्कृति के मूल आधार हमारे साहित्य के (2) \_\_\_\_\_ ग्रंथ - रत्न हैं, जिनके विचारों से भारत की आंतरिक (3) \_\_\_\_\_ का ज्ञान हो जाता है। हमारे देश की बाहरी विविधता भारतीय (4) \_\_\_\_\_ के रूप में बहनेवाली विचार और संस्कृति की एकता को ढक लेती है। वांग्मय की (5) \_\_\_\_\_ एक है, पर वह अनेक भाषाओं, रूपों तथा परिस्थितियों में हमारे सामने आती है।

**SubQuestion No : 18**

Q.18 रिक्त स्थान (3) की पूर्ति 'अनेकता' के विलोम शब्द से कीजिए।

Ans  1. ममता

2. एकाग्रता

3. एकता

4. समता

Question ID : 26433069952

Status : Not Answered

Chosen Option : --

**Comprehension:**

प्रश्न 1 से 5 तक के उत्तर निम्नांकित गद्यावतरण के आधार पर दीजिए।

किसी देश की संस्कृति को जानने के लिए वहाँ के (1) \_\_\_\_\_ का पूरा अध्ययन नितांत आवश्यक है। साहित्य किसी देश तथा जाति के विकास का प्रतीक है। साहित्य से उस जाति के धार्मिक विचारों, सामाजिक संगठन, ऐतिहासिक घटनाचक्र तथा राजनीतिक परिस्थितियों का प्रतिबिंब मिल जाता है। भारतीय संस्कृति के मूल आधार हमारे साहित्य के (2) \_\_\_\_\_ ग्रंथ - रत्न हैं, जिनके विचारों से भारत की आंतरिक (3) \_\_\_\_\_ का ज्ञान हो जाता है। हमारे देश की बाहरी विविधता भारतीय (4) \_\_\_\_\_ के रूप में बहनेवाली विचार और संस्कृति की एकता को ढक लेती है। वांग्मय की (5) \_\_\_\_\_ एक है, पर वह अनेक भाषाओं, रूपों तथा परिस्थितियों में हमारे सामने आती है।

**SubQuestion No : 19**

**Q.19 रिक्त स्थान (4) की पूर्ति के लिए उपयुक्त शब्द का चयन विकल्पों में से कीजिए।**

- Ans**  1. वांग्मुख  
 2. वांग्मय  
 3. वाग्बैभव  
 4. वाहक

Question ID : 26433069953

Status : Not Answered

Chosen Option : --

**Comprehension:**

प्रश्न 1 से 5 तक के उत्तर निम्नांकित गद्यावतरण के आधार पर दीजिए।

किसी देश की संस्कृति को जानने के लिए वहाँ के (1) \_\_\_\_\_ का पूरा अध्ययन नितांत आवश्यक है। साहित्य किसी देश तथा जाति के विकास का प्रतीक है। साहित्य से उस जाति के धार्मिक विचारों, सामाजिक संगठन, ऐतिहासिक घटनाचक्र तथा राजनीतिक परिस्थितियों का प्रतिबिंब मिल जाता है। भारतीय संस्कृति के मूल आधार हमारे साहित्य के (2) \_\_\_\_\_ ग्रंथ - रत्न हैं, जिनके विचारों से भारत की आंतरिक (3) \_\_\_\_\_ का ज्ञान हो जाता है। हमारे देश की बाहरी विविधता भारतीय (4) \_\_\_\_\_ के रूप में बहनेवाली विचार और संस्कृति की एकता को ढक लेती है। वांग्मय की (5) \_\_\_\_\_ एक है, पर वह अनेक भाषाओं, रूपों तथा परिस्थितियों में हमारे सामने आती है।

**SubQuestion No : 20**

**Q.20 स्त्रीलिंग संज्ञा शब्द से रिक्त स्थान (5) की पूर्ति कीजिए।**

- Ans**  1. भगवान  
 2. प्राण  
 3. जीवन  
 4. आत्मा

Question ID : 26433069954

Status : Not Answered

Chosen Option : --

# Constable GD in CAPFs SSF Rifleman GD in Assam Rifles and Sepoy in NCB Examination 2022

Roll Number	<b>KD Job Updates</b>
Candidate Name	<b>KD Job Updates</b>
Venue Name	Dr. Ghanshyam Singh College Of Education
Exam Date	06/02/2023
Exam Time	9:00 AM - 10:00 AM
Subject	Constable GD Examination 2022

## Section : Part-A-General Intelligence and Reasoning

Q.1 In a certain code language, 'FIRST' is coded as 79191921 and 'TIME' is coded as 219145. How will 'BETTER' be coded in that language?

- Ans  1. 352120618  
 2. 262021519  
 3. 252020518  
 4. 362121619

Question ID : 26433074512  
Status : Answered  
Chosen Option : 1

Q.2 'A + B' means 'A is the father of B'  
'A - B' means 'A is the wife of B'  
'A × B' means 'A is the brother of B'  
'A ÷ B' means 'A is the daughter of B'  
As per which of the following expressions 'S is the wife of P'?

- Ans  1.  $S + Q \times R + P$   
 2.  $P + Q \times R + S$   
 3.  $S \times Q + R + P$   
 4.  $S \times Q + R \times P$

Question ID : 26433082760  
Status : Answered  
Chosen Option : 2

Q.3 Which of the mathematical signs should be interchanged in the below equation to make it mathematically correct?  
 $360 \times 8 - 320 + 72 \div 5 = 85$

- Ans  1. - and +  
 2. × and +  
 3. + and ×  
 4. + and ÷

Question ID : 264330114173  
Status : Answered  
Chosen Option : 1



Q.4 A, B, C, D, E, F and G are sitting in a row facing North. G is to the immediate right of E. G is sitting to the extreme right of the row. A is sitting to the third place from the left of E. B is sitting to the immediate right of A. C is sitting to the right of B. D is sitting to the immediate left of A. Who is sitting to the extreme left of the row?

- Ans
- 1. A
  - 2. F
  - 3. D
  - 4. G

Question ID : 26433074624  
Status : Answered  
Chosen Option : 2

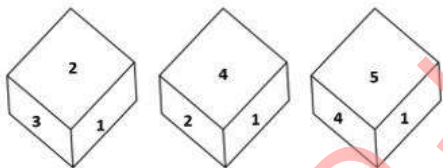
Q.5 Which two signs should be interchanged to make the below equation mathematically correct?

$$24 \times 108 - 36 \div 6 + 18 = 84$$

- Ans
- 1. + and ×
  - 2. ÷ and –
  - 3. – and +
  - 4. + and ÷

Question ID : 264330117550  
Status : Not Answered  
Chosen Option : --

Q.6 Three different positions of the same dice are shown. Find the number on the face opposite the face showing '6'.



- Ans
- 1. 3
  - 2. 5
  - 3. 1
  - 4. 2

Question ID : 26433082888  
Status : Answered  
Chosen Option : 3

Q.7 Which number will replace the question mark (?) in the following series?  
18, 20, ?, 128, 514, 2572

Ans  1. 42

2. 40

3. 22

4. 80

Question ID : 26433068968

Status : Not Answered

Chosen Option : --

Q.8 Select the option that is related to the fifth number in the same way as the second number is related to the first number and the fourth number is related to the third number.

12 : 3 :: 28 : 7 :: 32 : ?

Ans  1. 8

2. 12

3. 11

4. 6

Question ID : 26433069420

Status : Answered

Chosen Option : 1

Q.9 Which option represents the correct order of the given words as they would appear in the English dictionary?

1 Broken

2 Bread

3 Bridge

4 Bride

5 Broom

Ans  1. 2,4,3,1,5

2. 4,5,2,1,3

3. 2,4,5,1,3

4. 4,2,3,5,1

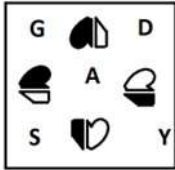
Question ID : 26433069256

Status : Answered

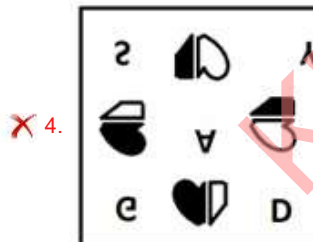
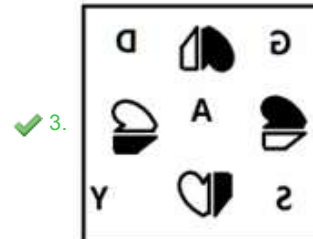
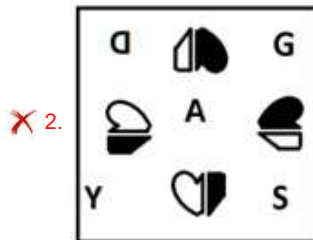
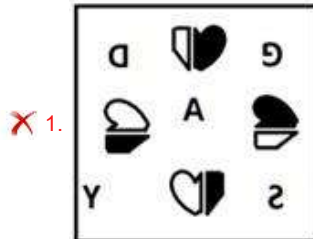
Chosen Option : 1

Q.10 Which of the following figures is the exact mirror image of the given problem figure when the mirror is held at the right side?

Problem figure:



Ans




Question ID : 26433087084

Status : Answered


Chosen Option : 3

Q.11 Select the figure that will replace the question mark (?) in the following figure series.




Ans

✗ 1.



✓ 2.



✗ 3.



✗ 4.



KD Job Updates

Question ID : 26433070418

Status : Answered

Chosen Option : 2

Q.12 Amir, Bunty, Leslie, Pradeep, Eshan, Faiz, Gaurav and Harish are sitting around a square table facing the centre of the table. Some of them are sitting at the corners, while some are sitting at the exact centre of the sides. Pradeep sits third to the right of Gaurav. Pradeep sits at one of the corners. Bunty sits second to the right of Faiz. Faiz does not sit at any of the corners. Bunty is not an immediate neighbour of Pradeep. Harish is an immediate neighbour of Amir. Harish does not sit at any of the middle of the sides. Only one person sits between Harish and Leslie.  
Who sits third to the right of Amir?

- Ans  1. Eshan  
 2. Leslie  
 3. Bunty  
 4. Gaurav

Question ID : 26433082292  
Status : Answered  
Chosen Option : 1

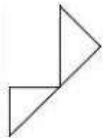
Q.13 उस विकल्प का चयन कीजिए जो तीसरे शब्द से उसी प्रकार संबंधित है जिस प्रकार दूसरा शब्द पहले शब्द से संबंधित है। (शब्दों को अर्थपूर्ण शब्दों के रूप में मानना है और उन्हें शब्द में अक्षरों/व्यंजनों/स्वरों की संख्या के आधार पर एक-दूसरे से संबंधित नहीं करना है।)  
यहूदी : तौरात :: ईसाई : ?

- Ans  1. चर्च  
 2. ओल्ड टेस्टामेंट  
 3. न्यू टेस्टामेंट  
 4. बाइबिल

Question ID : 26433067373  
Status : Not Answered  
Chosen Option : --

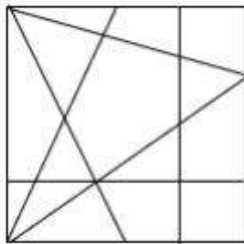
KD Job Updates

Q.14 Select the option in which the given figure is embedded (rotation is NOT allowed).

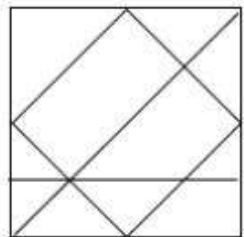


Ans

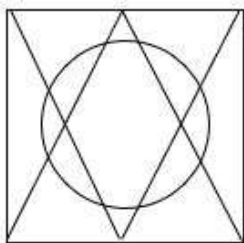
✗ 1.



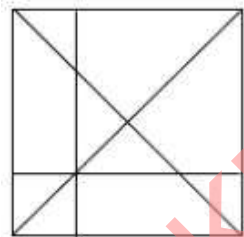
✗ 2.



✗ 3.



✓ 4.



Question ID : 26433076720

Status : Answered

Chosen Option : 4

Q.15 Select the letter-cluster from among the given options that can replace the question mark (?) in the following series.  
KILT, OMPX, SQT B, WUXF, ?

Ans ✗ 1. AYBK

✓ 2. AYBJ

✗ 3. AZBJ

✗ 4. AZBK

Question ID : 26433079031

Status : Answered

Chosen Option : 2

**Q.16** Select the option that is related to the third word in the same way as the second word is related to the first word. (The words must be considered as meaningful English words and must not be related to each other based on the number of letters/number of consonants/vowels in the word)

Ore : Metal :: Milk : ?

- Ans
- 1. Curd
  - 2. Cloth
  - 3. Cow
  - 4. Glass

Question ID : 26433082934

Status : Answered

Chosen Option : 1

**Q.17** In a certain code language, 'HEALTH' is written as 'CGJJVN' and 'CHARGE' is written as 'CJEGIT'. How will 'HOURSE' be written as in that language?

- Ans
- 1. WQJGUT
  - 2. TNGDRQ
  - 3. GNSSTF
  - 4. VPIFTS

Question ID : 26433069640

Status : Not Answered

Chosen Option : --

**Q.18** Read the given statements and conclusions carefully. Assuming that the information given in the statements is true, even if it appears to be at variance with commonly known facts, decide which of the given conclusions logically follows from the statements.

Statements:

All camels are fractals.

No fractal is a tube.

All pianos are camels.

Conclusions:

I. Some tubes are camels.

II. No piano is a tube.

- Ans
- 1. Either conclusion I or II follows
  - 2. Neither conclusion I nor II follows
  - 3. Only conclusion II follows
  - 4. Only conclusion I follows

Question ID : 26433089548

Status : Answered

Chosen Option : 3

**Q.19** Which of the following letter-clusters will replace the question mark (?) and complete the following letter-cluster series?  
HSU, JQO, LOI, NME, ?

- Ans
- 1. PLA
  - 2. PKB
  - 3. OKA
  - 4. PKA

Question ID : 26433067275  
Status : Answered  
Chosen Option : 3

**Q.20** Which of the following numbers will replace the question mark (?) in the given series?  
1995, 1895, 1695, 1395, ?

- Ans
- 1. 1005
  - 2. 885
  - 3. 995
  - 4. 1195

Question ID : 26433085352  
Status : Answered  
Chosen Option : 3

Section : Part-B-General Knowledge and General awareness

**Q.1** Who was the flag bearer for India for the opening ceremony of the Asian Games 2018?

- Ans
- 1. Rani Rampal
  - 2. Sanjeev Rajput
  - 3. Neeraj Chopra
  - 4. Deepak Kumar

Question ID : 264330115907  
Status : Not Answered  
Chosen Option : --

**Q.2** Who took over as the Director of Intelligence Bureau on 24 June 2022?

- Ans
- 1. Rajiv Jain
  - 2. Tapan Kumar Deka
  - 3. Arvind Kumar
  - 4. Dineshwar Sharma

Question ID : 264330115040  
Status : Answered  
Chosen Option : 3



Q.3 Yuki Bhambri is related to which of the following game?

- Ans  1. Cricket  
 2. Baseball  
 3. Badminton  
 4. Tennis

Question ID : 264330116297  
Status : Not Answered  
Chosen Option : --

Q.4 Which among the following instruments is used to measure the humidity of the air or a gas?

- Ans  1. Hygrometer  
 2. Anemometer  
 3. Bolometer  
 4. Hydrometer

Question ID : 264330115140  
Status : Answered  
Chosen Option : 4

Q.5 Rajagriha was the capital of Magadha for several years. Later the capital was shifted to \_\_\_\_\_.

- Ans  1. Ujjain  
 2. Kanchipuram  
 3. Taxila  
 4. Pataliputra

Question ID : 264330115438  
Status : Answered  
Chosen Option : 4

Q.6 Only Indian citizen above the age of \_\_\_\_\_ years are eligible for the appointment of the Governor of a State.

- Ans  1. 28  
 2. 40  
 3. 25  
 4. 35

Question ID : 26433086854  
Status : Answered  
Chosen Option : 4

Q.7 Which of the following is NOT a freshwater lake in India?

- Ans
- 1. Bhimtal
  - 2. Loktak
  - 3. Barapani
  - 4. Sambhar

Question ID : 264330116008  
Status : Not Answered  
Chosen Option : --

Q.8 Which of the following folk dances is associated with the state of Tamil Nadu?

- Ans
- 1. Ghapal
  - 2. Lavani
  - 3. Bhand
  - 4. Kummi

Question ID : 26433086716  
Status : Answered  
Chosen Option : 3

Q.9 \_\_\_\_\_ was passed in 2019 and as a result of which the security of Prime Minister of India and other former Prime Ministers was restricted.

- Ans
- 1. SUDDEN PROTECTION GROUP (AMENDMENT) ACT, 2019
  - 2. SPECIAL PROTECTION GROUP (AMENDMENT) ACT, 2019
  - 3. SECURITY PROTECTION GROUP (AMENDMENT) ACT, 2019
  - 4. SPECIAL PROTOCOL GROUP (AMENDMENT) ACT, 2019

Question ID : 264330116226  
Status : Answered  
Chosen Option : 2

Q.10 Pick the odd one out (Hint: textile industry)

- Ans
- 1. electrical industry
  - 2. silk industry
  - 3. cotton industry
  - 4. woollen industry

Question ID : 264330115584  
Status : Answered  
Chosen Option : 1

Q.11 Darshana Jhaveri received the Padma Shri for which dance form?

- Ans
- 1. Manipuri
  - 2. Lavani
  - 3. Kathakali
  - 4. Kathak

Question ID : 264330115880  
Status : Not Answered  
Chosen Option : --

Q.12 Total value of final goods and services produced \_\_\_\_\_ domestic territory during an accounting year is domestic income.

- Ans  1. within  
 2. away from  
 3. other than  
 4. outside

Question ID : 264330115337  
Status : Answered  
Chosen Option : 1

Q.13 Which article of the Constitution of India abolishes the concept of 'untouchability' and prohibits its practice in any shape or form?

- Ans  1. 16  
 2. 15  
 3. 17  
 4. 14

Question ID : 264330115638  
Status : Answered  
Chosen Option : 3

Q.14 Who among the following was sworn in as chief minister of Goa in March 2022?

- Ans  1. Pramod Sawant  
 2. Manohar Parrikar  
 3. Digambar Kamat  
 4. Sudin Dhavalikar

Question ID : 264330114892  
Status : Not Answered  
Chosen Option : --

Q.15 The famous Pushkar Fair of Rajasthan is held \_\_\_\_\_ in a year.

- Ans  1. two times  
 2. four times  
 3. three times  
 4. one time

Question ID : 264330115078  
Status : Not Answered  
Chosen Option : --

Q.16 The Fifth five year plan of India, was focused on :

- Ans
- 1. Centralization of states
  - 2. Waste Management
  - 3. Removal of poverty
  - 4. Removal of forests

Question ID : 264330115358  
Status : Answered  
Chosen Option : 3

Q.17 At independence, about 75 percent of India's population was dependent on \_\_\_\_\_.

- Ans
- 1. service
  - 2. manufacturing
  - 3. agricultural
  - 4. mining

Question ID : 26433054623  
Status : Answered  
Chosen Option : 3

Q.18 Who among the following was one of the "Lal-Bal-Pal" of the freedom movement of India?

- Ans
- 1. Chittaranjan Das
  - 2. Lala Lajpat Rai
  - 3. Lal Bahadur Shastri
  - 4. Jawaharlal Nehru

Question ID : 26433089897  
Status : Not Answered  
Chosen Option : --

Q.19 The species that \_\_\_\_\_ a bare area are called pioneer species.

- Ans
- 1. invade
  - 2. avoid
  - 3. stay in
  - 4. leave

Question ID : 264330115256  
Status : Not Answered  
Chosen Option : --

Q.20 What is the rank of India in terms of Human Development Index 2021?

Ans  1. 112

2. 132

3. 124

4. 154

Question ID : 26433092885

Status : Answered

Chosen Option : 2

Section : Part-C-Elementary Mathematics

Q.1 A store is running a 'Buy 4 Get 1 Free' promotion scheme. What is the net discount percentage?

Ans  1. 20%

2. 15%

3. 22%

4. 18.5%

Question ID : 26433065277

Status : Answered

Chosen Option : 1

Q.2 A train crosses another train running at the same speed in the opposite direction in 5 seconds. If the speed of the first train is doubled and the speed of the second train is halved, then the time taken by the trains to cross is \_\_\_\_\_ seconds.

Ans  1. 6

2. 4

3. 3

4. 5

Question ID : 26433071263

Status : Not Answered

Chosen Option : --

Q.3 What is the least value of x so that the 5-digit number 725x3 becomes divisible by 9?

Ans  1. 0

2. 6

3. 3

4. 1

Question ID : 26433074450

Status : Answered

Chosen Option : 4

**Q.4** The cash difference between the selling prices of an article at a profit of 5% and 10% is Rs.5.

The ratio of the two selling prices is:

- Ans
- 1. 23 : 25
  - 2. 10 : 5
  - 3. 21 : 22
  - 4. 5 : 10

Question ID : 26433073008  
Status : Answered  
Chosen Option : 3

**Q.5** The average marks of eight students is 7. It was found that marks of one student was taken as 10 instead of 6. Find the correct average.

- Ans
- 1. 6.5
  - 2. 7.5
  - 3. 7
  - 4. 6.8

Question ID : 26433074563  
Status : Answered  
Chosen Option : 1

**Q.6** P and Q can complete a work in 8 days, Q and R in 12 days, and R and P in 15 days. How many days will R alone take to complete the work?

- Ans
- 1. 90
  - 2. 50
  - 3. 80
  - 4. 70

Question ID : 26433064932  
Status : Answered  
Chosen Option : 4

**Q.7** Anish can do a piece of work in 88 days. Yug can do this work in 66 days. Anish started the work alone. After how many days should Yug join him, so that the work is finished in 44 days?

- Ans
- 1. 13 days
  - 2. 11 days
  - 3. 15 days
  - 4. 12 days

Question ID : 264330116910  
Status : Answered  
Chosen Option : 2

Q.8 If the diameter of a sphere is 14 cm, find its volume (take  $\pi = \frac{22}{7}$ ).

- Ans
- 1. 1437.33 cm<sup>3</sup>
  - 2. 2437.34 cm<sup>3</sup>
  - 3. 1637.13 cm<sup>3</sup>
  - 4. 1537.23 cm<sup>3</sup>

Question ID : 26433075249  
Status : Answered  
Chosen Option : 1

Q.9 A, B and C are three batsmen of a cricket team. Given is the ratio of the runs scored by them in a certain match.

A : B = 6 : 7 and B : C = 5 : 6. At the end of the match, A, B and C together scored 856 runs. The number of runs scored by B is:

- Ans
- 1. 265
  - 2. 280
  - 3. 216
  - 4. 224

Question ID : 26433074992  
Status : Answered  
Chosen Option : 2

Q.10 If each side of a cube is increased by 15%, then the volume of the cube will increase by : (Consider integral part only)

- Ans
- 1. 45%
  - 2. 52%
  - 3. 42%
  - 4. 35%

Question ID : 26433076264  
Status : Answered  
Chosen Option : 2

Q.11 A dealer buys an old car listed at ₹85,000 and gets successive discounts of 20% and 10%. He spends ₹3,800 on its repairs and sells it at a profit of 20%. Find the selling price of the car.

- Ans
- 1. ₹80,000
  - 2. ₹78,000
  - 3. ₹75,000
  - 4. ₹1,00,000

Question ID : 26433090287  
Status : Answered  
Chosen Option : 2

Q.12 Compound interest is charged on a certain sum for 2 years at 10% rate per annum, compounding annually. If the amount becomes ₹605, then the principal (in ₹) is:

- Ans
- 1. 600
  - 2. 550
  - 3. 500
  - 4. 650

Question ID : 26433075884  
Status : Answered  
Chosen Option : 3

Q.13 In a city, there are 12000 voters. Out of them, 30% voted for A, 25% voted for B and 40% voted for C. Determine the number of voters that did not vote for any of these three participants.

- Ans
- 1. 800
  - 2. 600
  - 3. 400
  - 4. 500

Question ID : 26433071303  
Status : Answered  
Chosen Option : 2

Q.14 After allowing a discount of 10% on its marked price, the value of a washing machine is Rs.28,800. If no discount is allowed, then the shopkeeper gains 25%. The cost price of the washing machine is:

- Ans
- 1. Rs.26,200
  - 2. Rs.28,000
  - 3. Rs.25,600
  - 4. Rs.26,600

Question ID : 26433074960  
Status : Answered  
Chosen Option : 3

Q.15 An equilateral triangle with side  $a$  units is cut on the vertices to make it a regular hexagon. What is the area of the hexagon?

- Ans
- 1.  $\frac{3a^2}{2\sqrt{3}}$  square units
  - 2.  $\frac{2a^2}{3\sqrt{3}}$  square units
  - 3.  $\frac{2a^2}{\sqrt{3}}$  square units
  - 4.  $\frac{a^2}{2\sqrt{3}}$  square units

Question ID : 26433071368  
Status : Answered  
Chosen Option : 1



Q.16 Two trains start at the same time from two stations and proceed toward each other at the speed of 40 km/h and 45 km/h, respectively. When they meet, it is found that one train has travelled 20 km more than the other. Find the distance between the two stations.

- Ans
- 1. 390 km
  - 2. 400 km
  - 3. 395 km
  - 4. 340 km

Question ID : 26433074967  
Status : Not Answered  
Chosen Option : --

Q.17 A, B and C invested ₹10,000, ₹15,000 and ₹20,000 respectively. After one year each of A and B invested ₹5,000 more, while C withdrew ₹10,000. What will be the ratio of profit of A, B and C after three years from starting?

- Ans
- 1. 8 : 11 : 8
  - 2. 2 : 2 : 4
  - 3. 2 : 3 : 4
  - 4. 8 : 8 : 11

Question ID : 26433082098  
Status : Answered  
Chosen Option : 1

Q.18 Simplify the following.

$$15.2625 - [5.2 + 0.25 \times (4.78 - 1.5 \times 3.02)]$$

- Ans
- 1. 9
  - 2. 10
  - 3. 8
  - 4. 11

Question ID : 26433076300  
Status : Answered  
Chosen Option : 2

Q.19 A train starts from station P, runs through stations Q, R, S, T and reaches station U. It stops at stations Q, R, S and T for 2 minutes, 4 minutes, 6 minutes, and 8 minutes, respectively. The distance between P and U is 50 km. What is the average speed of the train between stations P and U (in km/h), if it runs for 70 minutes between the stations, with uniform speed?

Ans

1.  $\frac{100}{6}$

2.  $\frac{110}{3}$

3.  $\frac{110}{4}$

4.  $\frac{100}{3}$

Question ID : 26433085431

Status : Not Answered

Chosen Option : --

Q.20 The compound interest on ₹10,00,000 at 3% per annum, compounding annually is ₹92,727. The number of years required for this is:

Ans  1. 4

2. 2

3. 5

4. 3

Question ID : 26433091993

Status : Not Answered

Chosen Option : --

Section : Part-D-English

Q.1 Select the most appropriate ANTONYM of the given word.

Diminish

Ans  1. Grow

2. Empty

3. Futile

4. Decline

Question ID : 26433090790

Status : Answered

Chosen Option : 1

**Q.2** Select the most appropriate synonym of the capitalised word in the given sentence.

We paid her a **FLEETING** visit before leaving the country.

- Ans
- 1. Brief
  - 2. Final
  - 3. Hasty
  - 4. Last

Question ID : 26433088206  
Status : Answered  
Chosen Option : 4

**Q.3** Select the most appropriate meaning of the given idiom.

**Be riding high**

- Ans
- 1. To be in good mood
  - 2. A person who is a pilot
  - 3. A drunken person
  - 4. To be very successful

Question ID : 26433085200  
Status : Not Answered  
Chosen Option : --

**Q.4** The following sentence has been split into four segments. Identify the segment that contains a grammatical error.

Very few animals / was / as faithful as / the dog.

- Ans
- 1. the dog
  - 2. as faithful as
  - 3. was
  - 4. Very few animals

Question ID : 26433088100  
Status : Answered  
Chosen Option : 3

**Q.5** Select the most appropriate meaning of the given idiom.

**A vicious cycle**

- Ans
- 1. When one problem causes another problem
  - 2. Series of fortunate events
  - 3. Cyclical relationships
  - 4. Victorious efforts

Question ID : 26433073998  
Status : Not Answered  
Chosen Option : --

Q.6 Select the most appropriate option that can substitute the underlined segment in the given sentence. If there is no need to substitute it, select 'No substitution'.

Having a party is a bad idea because the neighbours are complain.

- Ans
- 1. No substitution
  - 2. because the neighbours will complain
  - 3. because the neighbours has been complaining
  - 4. because the neighbours had complained

Question ID : 264330101019  
Status : Answered  
Chosen Option : 3

Q.7 Complete the sentence with the most appropriate synonym of the word in brackets.

The \_\_\_\_\_ (glowing) fireflies lit up the field like city lights at night.

- Ans
- 1. devious
  - 2. dazzling
  - 3. furious
  - 4. gracious

Question ID : 26433089752  
Status : Answered  
Chosen Option : 4

Q.8 Select the most appropriate option to fill in the blank.

History is not only a very vast subject \_\_\_\_\_ very intriguing.

- Ans
- 1. but also
  - 2. besides
  - 3. and
  - 4. also

Question ID : 26433071814  
Status : Answered  
Chosen Option : 4

Q.9 Select the most appropriate synonym of the given word.

Antagonist

- Ans
- 1. Evil
  - 2. Adversary
  - 3. Nerd
  - 4. Amiable

Question ID : 26433072346  
Status : Not Answered  
Chosen Option : --

**Q.10** Select the most appropriate **ANTONYM** of the given word.  
**Cruel**

- Ans**  1. Sympathetic  
 2. Sensible  
 3. Unkind  
 4. Derogatory

Question ID : 26433093033  
Status : Answered  
Chosen Option : 2

**Q.11** The sentence given below has one misspelt word. Spot the **INCORRECTLY** spelt word and select its correct spelling.

There are some venmous snakes which spit and hiss when they are cornered.

- Ans**  1. Venomous  
 2. Wenomos  
 3. Wenomous  
 4. Venomos

Question ID : 26433073559  
Status : Not Answered  
Chosen Option : --

**Q.12** Select the most appropriate option to fill in the blank.

He used to \_\_\_\_\_ letters to his parents from Bangalore.

- Ans**  1. wright  
 2. rite  
 3. write  
 4. right

Question ID : 26433084713  
Status : Answered  
Chosen Option : 3

**Q.13** Identify the correctly spelt sentence.

- Ans**  1. Egypt is famous for its pyramid.  
 2. Egypt is famous for its piramid.  
 3. Egypt is famous for its peryamid.  
 4. Egypt is famous for its peramid.

Question ID : 26433072838  
Status : Answered  
Chosen Option : 1

Q.14 Select the most appropriate option that can substitute the underlined segment in the given sentence. If there is no need to substitute it, select 'No substitution required'.

Rising prices are causing great concern on Indian economists at the present moment.

- Ans
- 1. are causing a great concern to Indian economists
  - 2. are causing great concern to Indian economists
  - 3. No substitution required
  - 4. are causing a great concern for Indian economists

Question ID : 26433089401  
Status : Answered  
Chosen Option : 4

Q.15 Select the most appropriate ANTONYM of the word given in the bracket to fill in the blank.

She looks like a young Sigourney Weaver and plays the (naive) \_\_\_\_\_ heroine well, if a little too credulous for my taste.

- Ans
- 1. childish
  - 2. sophisticated
  - 3. tricked
  - 4. careless

Question ID : 26433072046  
Status : Answered  
Chosen Option : 4

#### Comprehension:

In the following passage, some words have been deleted. Read the passage carefully and select the most appropriate option to fill in each blank.  
A puzzle is a game, challenge, or toy that (1) \_\_\_\_\_ one's inventiveness or knowledge. The solver of a puzzle is supposed to (2) \_\_\_\_\_ parts together logically to arrive at the correct or enjoyable solution to the challenge. Crossword puzzles, word-search puzzles, number puzzles, relational puzzles, and logic puzzles are examples of puzzle (3) \_\_\_\_\_. Puzzles are frequently developed for fun purposes, but they may also result from (4) \_\_\_\_\_ mathematical or logical challenges. In such circumstances, its answer might make an important (5) \_\_\_\_\_ to mathematical research.

SubQuestion No : 16

Q.16 Select the most appropriate option to fill in blank no. 1.

- Ans
- 1. enjoys
  - 2. elicits
  - 3. invokes
  - 4. tests

Question ID : 26433058709  
Status : Answered  
Chosen Option : 4

**Comprehension:**

In the following passage, some words have been deleted. Read the passage carefully and select the most appropriate option to fill in each blank.

A puzzle is a game, challenge, or toy that (1)\_\_\_\_\_ one's inventiveness or knowledge. The solver of a puzzle is supposed to (2)\_\_\_\_\_ parts together logically to arrive at the correct or enjoyable solution to the challenge. Crossword puzzles, word-search puzzles, number puzzles, relational puzzles, and logic puzzles are examples of puzzle (3)\_\_\_\_\_. Puzzles are frequently developed for fun purposes, but they may also result from (4)\_\_\_\_\_ mathematical or logical challenges. In such circumstances, its answer might make an important (5)\_\_\_\_\_ to mathematical research.

**SubQuestion No : 17**

**Q.17 Select the most appropriate option to fill in blank no. 2.**

- Ans
- 1. manifest
  - 2. disintegrate
  - 3. fit
  - 4. paste

Question ID : 26433058710

Status : Answered

Chosen Option : 3

**Comprehension:**

In the following passage, some words have been deleted. Read the passage carefully and select the most appropriate option to fill in each blank.

A puzzle is a game, challenge, or toy that (1)\_\_\_\_\_ one's inventiveness or knowledge. The solver of a puzzle is supposed to (2)\_\_\_\_\_ parts together logically to arrive at the correct or enjoyable solution to the challenge. Crossword puzzles, word-search puzzles, number puzzles, relational puzzles, and logic puzzles are examples of puzzle (3)\_\_\_\_\_. Puzzles are frequently developed for fun purposes, but they may also result from (4)\_\_\_\_\_ mathematical or logical challenges. In such circumstances, its answer might make an important (5)\_\_\_\_\_ to mathematical research.

**SubQuestion No : 18**

**Q.18 Select the most appropriate option to fill in blank no. 3.**

- Ans
- 1. species
  - 2. genres
  - 3. attachment
  - 4. aggregates

Question ID : 26433058711

Status : Answered

Chosen Option : 4

**Comprehension:**

In the following passage, some words have been deleted. Read the passage carefully and select the most appropriate option to fill in each blank.

A puzzle is a game, challenge, or toy that (1)\_\_\_\_\_ one's inventiveness or knowledge. The solver of a puzzle is supposed to (2)\_\_\_\_\_ parts together logically to arrive at the correct or enjoyable solution to the challenge. Crossword puzzles, word-search puzzles, number puzzles, relational puzzles, and logic puzzles are examples of puzzle (3)\_\_\_\_\_. Puzzles are frequently developed for fun purposes, but they may also result from (4)\_\_\_\_\_ mathematical or logical challenges. In such circumstances, its answer might make an important (5)\_\_\_\_\_ to mathematical research.

**SubQuestion No : 19**

**Q.19 Select the most appropriate option to fill in blank no. 4.**

- Ans  1. servile  
 2. subsidiary  
 3. significant  
 4. subordinate

Question ID : 26433058712

Status : Answered

Chosen Option : 3

**Comprehension:**

In the following passage, some words have been deleted. Read the passage carefully and select the most appropriate option to fill in each blank.

A puzzle is a game, challenge, or toy that (1)\_\_\_\_\_ one's inventiveness or knowledge. The solver of a puzzle is supposed to (2)\_\_\_\_\_ parts together logically to arrive at the correct or enjoyable solution to the challenge. Crossword puzzles, word-search puzzles, number puzzles, relational puzzles, and logic puzzles are examples of puzzle (3)\_\_\_\_\_. Puzzles are frequently developed for fun purposes, but they may also result from (4)\_\_\_\_\_ mathematical or logical challenges. In such circumstances, its answer might make an important (5)\_\_\_\_\_ to mathematical research.

**SubQuestion No : 20**

**Q.20 Select the most appropriate option to fill in blank no. 5.**

- Ans  1. deviation  
 2. annexation  
 3. inspection  
 4. addition

Question ID : 26433058713

Status : Answered

Chosen Option : 2

Section : Part-D-Hindi

**Q.1 'समाचार पत्रों में \_\_\_\_\_ के लिए सूचना प्रकाशित की जाती है।'**  
उपरोक्त वाक्य के रिक्त स्थान की पूर्ति विकल्पों में से सर्वोचित शब्द के चयन द्वारा कीजिए।

- Ans  1. साधारण  
 2. आपके  
 3. हमारे  
 4. सर्वसाधारण

Question ID : 26433080898

Status : Not Answered

Chosen Option : --



Q.2 विकल्पों में दिया गया कौन सा शब्द निम्नलिखित वाक्य में रेखांकित शब्द का पर्यायवाची नहीं है?  
मेरा घर मेरे विद्यालय के 'पास' ही है।

- Ans
- 1. निकट
  - 2. सन्निकट
  - 3. समीप
  - 4. दूर

Question ID : 26433091335  
Status : Not Answered  
Chosen Option : --

Q.3 निम्न समानार्थी शब्दों में से उचित शब्द का प्रयोग करके दिए गए वाक्य के रिक्त स्थान की पूर्ति करें—  
विधानसभा का चुनाव एक निश्चित \_\_\_\_\_ के लिए होता है।

- Ans
- 1. अवधि
  - 2. समय
  - 3. काल
  - 4. युग

Question ID : 26433062931  
Status : Not Answered  
Chosen Option : --

Q.4 'कुत्ता रेंकता है।' इस वाक्य में रेखांकित शब्द के स्थान पर कौनसा शब्द उपयुक्त होगा?

- Ans
- 1. रम्भाता
  - 2. चिंघाड़ता
  - 3. दहाड़ता
  - 4. भौंकता

Question ID : 26433062200  
Status : Not Answered  
Chosen Option : --

Q.5 'अपना हाथ जगन्नाथ' मुहावरे का सही अर्थ क्या है?

- Ans
- 1. अपना काम खुद करने से भला होता है
  - 2. आशीर्वाद पाना
  - 3. आशीर्वाद देना
  - 4. किसी व्यक्ति के हाथ से सब अच्छा होना

Question ID : 26433062600  
Status : Not Answered  
Chosen Option : --

Q.6 'आँख में अंजन दांत में मंजन।' वाक्य में प्रयुक्त 'अंजन' शब्द निम्न में से किस अर्थ को व्यक्त करता है?

- Ans
- 1. लेप
  - 2. काजल
  - 3. माया
  - 4. रात

Question ID : 26433069729  
Status : Not Answered  
Chosen Option : --

Q.7 'जिसे मापा न जा सके'  
ऊपर दिए गए वाक्यांश के लिए एक शब्द क्या होगा?

- Ans
- 1. सीमित
  - 2. परिमाण
  - 3. अपरिमेय
  - 4. अप्रमेय

Question ID : 26433070053  
Status : Not Answered  
Chosen Option : --

Q.8 'सुकृति' का अर्थ है, पुण्य। आप 'सुकृती' के अर्थ से निम्न वाक्य पूर्ति कीजिए।  
\_\_\_\_\_ व्यक्ति ही मोक्ष प्राप्त करता है।

- Ans
- 1. सुंदर
  - 2. पुण्यवान
  - 3. पंडित
  - 4. अमीर

Question ID : 26433063079  
Status : Not Answered  
Chosen Option : --

Q.9 दिए गये वाक्यांश के लिए सार्थक शब्द बताइए - 'जो गाँव से सम्बन्धित हो'

- Ans
- 1. ग्रामीण
  - 2. देशज
  - 3. ग्रमागत
  - 4. ग्रामसेवी

Question ID : 26433062593  
Status : Not Answered  
Chosen Option : --

Q.10 निम्नलिखित में से शुद्ध वाक्य है-

- Ans
- 1. सीता कितब पढ़ती है।
  - 2. सीता किताब पढ़ है।
  - 3. सीता किताब पढ़ती है।
  - 4. सीता किताब पठित है।

Question ID : 26433066837  
Status : Not Answered  
Chosen Option : --

Q.11 'बंदर क्या जाने नींबू का स्वाद।' इस मुहावरे में कौन सा शब्द अशुद्ध है?

- Ans
- 1. बंदर
  - 2. नींबू
  - 3. क्या
  - 4. स्वाद

Question ID : 26433062816  
Status : Not Answered  
Chosen Option : --

Q.12 निम्नलिखित में से शुद्ध वाक्य है-

- Ans
- 1. लाल रोशनी देखकर सावधान हो जाओ।
  - 2. लाल रोशनी देखकर सावधान हो जाओ।
  - 3. लाल रोशनी देखकर शवधान हो जाओ।
  - 4. लाल रोशन देखकर सावधान हो जाओ।

Question ID : 26433066844  
Status : Not Answered  
Chosen Option : --

Q.13 निम्न वाक्य में रेखांकित अंश के स्थान पर सबसे उपयुक्त विकल्प इनमें से कौन-सा होगा?  
दूध में जामुन डालने से दही बनता है।

- Ans
- 1. जामन
  - 2. आम
  - 3. लीची
  - 4. इमली

Question ID : 26433066872  
Status : Not Answered  
Chosen Option : --

Q.14 निम्नलिखित में से कौन-सा वाक्य संज्ञा के प्रयोग की दृष्टि से सर्वाधिक उपयुक्त है?

- Ans
- 1. उन्नति के मार्ग में बड़े दुःख हैं।
  - 2. उन्नति के मार्ग में बहुत आपत्ति हैं।
  - 3. उन्नति के मार्ग में बहुत संकट हैं।
  - 4. उन्नति के मार्ग में अनेक बाधाएँ हैं।

Question ID : 26433066955  
Status : Not Answered  
Chosen Option : --

Q.15 दिए गए वाक्यों में से किस वाक्य में सही विभक्ति चिह्न का प्रयोग नहीं हुआ है?

- Ans
- 1. अमिताभ बच्चन की फिल्में अच्छी होती हैं।
  - 2. सारा तीलियों ने एक पेंटिंग बना रही है।
  - 3. वह आज हम सब के लिए मिठाई लाया था।
  - 4. आंटी ने उसे एक डिब्बे में मिठाई दी थी।

Question ID : 26433062863  
Status : Not Answered  
Chosen Option : --

**Comprehension:**

निम्नलिखित गद्यांश में कुछ शब्दों को हटा दिया गया है। दिए गए विकल्पों की सहायता से रिक्त स्थानों की पूर्ति कीजिए। प्रत्येक संख्या के लिए सबसे उपयुक्त विकल्प का चयन करें।  
सच्चा मित्र एक 1. \_\_\_\_\_ की तरह होता है। सच्चा मित्र खोज पाना 2. \_\_\_\_\_ काम नहीं है। ऐसा मित्र 3. \_\_\_\_\_ नहीं होता। उसे आपकी 4. \_\_\_\_\_ से कोई मोह नहीं होता। वह अपने मित्र की 5. \_\_\_\_\_ को किसी के सामने उजागर नहीं करता।

**SubQuestion No : 16**

Q.16 रिक्त स्थान 1 की पूर्ति के लिए सबसे उपयुक्त विकल्प का चयन करें।

- Ans
- 1. सोना
  - 2. रूपए
  - 3. मंडन
  - 4. खजाने

Question ID : 264330110849  
Status : Not Answered  
Chosen Option : --

**Comprehension:**

निम्नलिखित गद्यांश में कुछ शब्दों को हटा दिया गया है। दिए गए विकल्पों की सहायता से रिक्त स्थानों की पूर्ति कीजिए। प्रत्येक संख्या के लिए सबसे उपयुक्त विकल्प का चयन करें।  
सच्चा मित्र एक 1. \_\_\_\_\_ की तरह होता है। सच्चा मित्र खोज पाना 2. \_\_\_\_\_ काम नहीं है। ऐसा मित्र 3. \_\_\_\_\_ नहीं होता। उसे आपकी 4. \_\_\_\_\_ से कोई मोह नहीं होता। वह अपने मित्र की 5. \_\_\_\_\_ को किसी के सामने उजागर नहीं करता।

**SubQuestion No : 17**

Q.17 रिक्त स्थान 2 की पूर्ति के लिए सबसे उपयुक्त विकल्प का चयन करें।

- Ans
- 1. कठिन
  - 2. दुर्बोध
  - 3. सरल
  - 4. विकट

Question ID : 264330110850

Status : Not Answered

Chosen Option : --

**Comprehension:**

निम्नलिखित गद्यांश में कुछ शब्दों को हटा दिया गया है। दिए गए विकल्पों की सहायता से रिक्त स्थानों की पूर्ति कीजिए। प्रत्येक संख्या के लिए सबसे उपयुक्त विकल्प का चयन करें।  
सच्चा मित्र एक 1. \_\_\_\_\_ की तरह होता है। सच्चा मित्र खोज पाना 2. \_\_\_\_\_ काम नहीं है। ऐसा मित्र 3. \_\_\_\_\_ नहीं होता। उसे आपकी 4. \_\_\_\_\_ से कोई मोह नहीं होता। वह अपने मित्र की 5. \_\_\_\_\_ को किसी के सामने उजागर नहीं करता।

**SubQuestion No : 18**

Q.18 रिक्त स्थान 3 की पूर्ति के लिए सबसे उपयुक्त विकल्प का चयन करें।

- Ans
- 1. सामान्य
  - 2. स्वार्थी
  - 3. परमार्थ
  - 4. प्रयोजन

Question ID : 264330110851

Status : Not Answered

Chosen Option : --

**Comprehension:**

निम्नलिखित गद्यांश में कुछ शब्दों को हटा दिया गया है। दिए गए विकल्पों की सहायता से रिक्त स्थानों की पूर्ति कीजिए। प्रत्येक संख्या के लिए सबसे उपयुक्त विकल्प का चयन करें।  
सच्चा मित्र एक 1. \_\_\_\_\_ की तरह होता है। सच्चा मित्र खोज पाना 2. \_\_\_\_\_ काम नहीं है। ऐसा मित्र 3. \_\_\_\_\_ नहीं होता। उसे आपकी 4. \_\_\_\_\_ से कोई मोह नहीं होता। वह अपने मित्र की 5. \_\_\_\_\_ को किसी के सामने उजागर नहीं करता।

**SubQuestion No : 19**

Q.19 रिक्त स्थान 4 की पूर्ति के लिए सबसे उपयुक्त विकल्प का चयन करें।

- Ans
- 1. उदारता
  - 2. नाकामयाबी
  - 3. धन-दौलत
  - 4. प्रसिद्धि

Question ID : 264330110852

Status : Not Answered

Chosen Option : --

**Comprehension:**

निम्नलिखित गद्यांश में कुछ शब्दों को हटा दिया गया है। दिए गए विकल्पों की सहायता से रिक्त स्थानों की पूर्ति कीजिए। प्रत्येक संख्या के लिए सबसे उपयुक्त विकल्प का चयन करें।  
सच्चा मित्र एक 1. \_\_\_\_\_ की तरह होता है। सच्चा मित्र खोज पाना 2. \_\_\_\_\_ काम नहीं है। ऐसा मित्र 3. \_\_\_\_\_ नहीं होता। उसे आपकी 4. \_\_\_\_\_ से कोई मोह नहीं होता। वह अपने मित्र की 5. \_\_\_\_\_ को किसी के सामने उजागर नहीं करता।

**SubQuestion No : 20**

Q.20 रिक्त स्थान 5 की पूर्ति के लिए सबसे उपयुक्त विकल्प का चयन करें।

- Ans
- 1. लोकप्रियता
  - 2. कामयाबी
  - 3. गुमनामी
  - 4. कमजोरी

Question ID : 264330110853

Status : Not Answered

Chosen Option : --

KD Job Updates

# Constable GD in CAPFs SSF Rifleman GD in Assam Rifles and Sepoy in NCB Examination 2022

Roll Number	KD Job Updates
Candidate Name	KD Job Updates
Venue Name	BR Online Services
Exam Date	06/02/2023
Exam Time	11:45 AM - 12:45 PM
Subject	Constable GD Examination 2022

## Section : Part-A-General Intelligence and Reasoning

Q.1 If '+' means '÷', '÷' means '-', '-' means '×', and '×' means '+'. Which of the following will be the value of the expression?  
 $32 \div 64 + 8 - 5 \times 36$

- Ans
- 1. 32
  - 2. 38
  - 3. 30
  - 4. 28

Question ID : 264330114189

Status : Answered

Chosen Option : 4

Q.2 In a certain code language, 'Tango is dance' is written as 'de be le', 'dance is practice' is written as 'le be ke' and 'let's dance' is written as 're le'. How will 'practice' be written in that language?

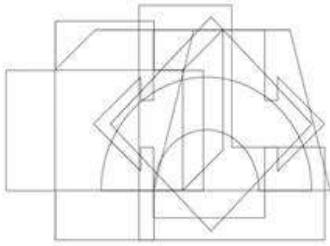
- Ans
- 1. le
  - 2. ke
  - 3. be
  - 4. de

Question ID : 26433070328

Status : Answered


Chosen Option : 2

Q.3 Select the option figure which is embedded in the given figure. (Rotation is NOT allowed)

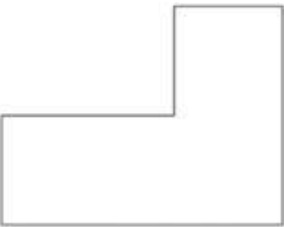


Ans

✗ 1.



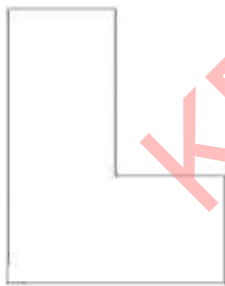
✗ 2.



✗ 3.



✓ 4.



KD Job Updates

Question ID : 26433085748

Status : Answered

Chosen Option : 4



**Q.4** Six persons H, R, J, S, N and B are sitting in a row facing North. B is not sitting beside J, who is sitting at the extreme right. H is the immediate neighbour of N and B. N is not sitting beside S and J. R is the immediate neighbour of S and J. Who is sitting to the immediate right of B?

- Ans
- 1. H
  - 2. J
  - 3. S
  - 4. N

Question ID : 26433079064  
Status : Answered  
Chosen Option : 3

**Q.5** Which of the following numbers will replace the question mark (?) in the given series?  
7, 21, 25, ?, 131, 917

- Ans
- 1. 105
  - 2. 115
  - 3. 120
  - 4. 125

Question ID : 26433069082  
Status : Answered  
Chosen Option : 4

**Q.6** Which of the following numbers will replace the question mark (?) in the given series?  
3, ?, 27, 44, 63, 86, 115

- Ans
- 1. 14
  - 2. 17
  - 3. 19
  - 4. 11

Question ID : 26433090060  
Status : Answered  
Chosen Option : 1

Q.7 Select the correct mirror image of the given figure, when the mirror is placed at MN as shown below.



Ans

- 1. ∟ ♡ b U C e ?
- 2. ∟ ♡ b U C e ?
- 3. ∟ ♡ b U C e ?
- 4. ∟ ♡ b U C 9 ?

Question ID : 26433090148

Status : Answered

Chosen Option : 3

KD Job Updates

Q.8 Which figure should replace the question mark (?) if the series were to be continued?

5	X	D	☆	V	□	S	☆	V	X	D	N	
L	O	N	N	3	L	3	L	□	□	Z	3	?
□	V	☆	D	X	5	N	D	X	V	☆	S	

Ans

✗ 1.

F	X	D
N	□	Z
3	V	☆

✗ 2.

S	X	N
Z	3	N
□	V	☆

✓ 3.

F	X	D
Z	3	N
□	V	☆

✗ 4.

S	☆	V
3	F	□
N	D	X

KD Job Updates

Question ID : 26433076629  
 Status : Answered  
 Chosen Option : 2

Q.9 Which of the following letters will replace the question mark (?) and complete the following letter series?  
 I, K, O, U, C, ?

- Ans
- ✗ 1. K
  - ✓ 2. M
  - ✗ 3. N
  - ✗ 4. L

Question ID : 26433067291  
 Status : Answered  
 Chosen Option : 2

**Q.10** Three statements are given, followed by three conclusions numbered I, II and III. Assuming the statements to be true, even if they seem to be at variance with commonly known facts, decide which of the conclusions logically follow(s) from the statements.

**Statements:**

No carrots are beets.

Some carrots are gingers.

Some gingers are beets.

**Conclusions:**

I. All beets are gingers.

II. Some gingers are carrots.

III. Some beets are carrots.

- Ans**
- 1. Only conclusions II and III follow
  - 2. All conclusions follow
  - 3. Only conclusion II follows
  - 4. Only conclusions I and III follow

Question ID : 26433090999

Status : Answered

Chosen Option : 3

**Q.11** Select the option that is related to the fourth term in the same way as the first term is related to the second term and the fifth term is related to the sixth term.  
625 : 35 :: ? : 27 :: 361 : 29

- Ans**
- 1. 121
  - 2. 100
  - 3. 256
  - 4. 289

Question ID : 26433074550

Status : Answered

Chosen Option : 4

**Q.12** Which two signs should be interchanged to make the below equation mathematically correct?

$$18 + 72 \div 12 \times 36 - 12 = 132$$

- Ans**
- 1. + and -
  - 2. × and ÷
  - 3. + and -
  - 4. × and +

Question ID : 264330117565

Status : Answered

Chosen Option : 4

Q.13 Which letter cluster will replace the question mark (?) to complete the given series?  
WGVQ, CWHY, ?, OCFO, USRW

- Ans  1. IMTG  
 2. HWBT  
 3. TDGT  
 4. OSXG

Question ID : 26433079428  
Status : Answered  
Chosen Option : 4

Q.14 In a certain code language INVADE is written as 'LRYEGI' and CATER is written as 'FEWIU'. How will WIRING be written in the same code language?

- Ans  1. ZMVMQL  
 2. ZNUNQK  
 3. ZMVMQK  
 4. ZMUMQK

Question ID : 26433076684  
Status : Answered  
Chosen Option : 4

Q.15 Select the option that is related to the third word in the same way as the second word is related to the first word.  
(The words must be considered as meaningful English words and must NOT be related to each other based on the number of letters/number of consonants/vowels in the word)  
Army : Land :: Navy : ?

- Ans  1. Desert  
 2. Forest  
 3. Water  
 4. Mountain

Question ID : 26433087196  
Status : Answered  
Chosen Option : 3

Q.16 Seven people Z, H, B, W, S, R, and G are sitting in a straight row, facing north. Only two people sit to the left of S. Only two people sit to the right of H. Only H sits between G and Z. Only S sits between W and G. B sits at the extreme right of the row. Who sits at the extreme left of the row?

- Ans  1. W  
 2. R  
 3. S  
 4. Z

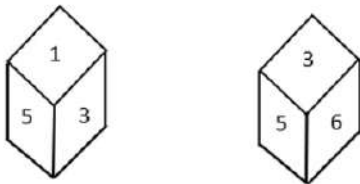
Question ID : 26433092598  
Status : Answered  
Chosen Option : 2

Q.17 'A = B' means 'A is the son of B'  
'A \* B' means 'A is the mother of B'  
'A % B' means 'A is the husband of B'  
'A \$ B' means 'A is the sister of B'  
If 'X \$ D = M \* N', then how is M related to X?

- Ans  1. Daughter  
 2. Mother  
 3. Sister  
 4. Paternal grandmother

Question ID : 26433087129  
Status : Answered  
Chosen Option : 2

Q.18 Two different positions of the same dice are shown having numbers 1 to 6. Find the number on the face opposite the face showing '1'.



- Ans  1. 4  
 2. 3  
 3. 2  
 4. 6

Question ID : 26433085518  
Status : Answered  
Chosen Option : 4

Q.19 Which option represents the correct order of the given words as they would appear in the English dictionary?  
1 Train  
2 Truck  
3 Transport  
4 Travel  
5 Trade

- Ans  1. 5,1,3,4,2  
 2. 5,3,1,4,2  
 3. 5,4,3,1,2  
 4. 5,1,4,2,3

Question ID : 26433069277  
Status : Answered  
Chosen Option : 1

**Q.20** Select the option that is related to the third word in the same way as the second word is related to the first word.  
(The words must be considered as meaningful English words and must not be related to each other based on the number of letters/ number of consonants / vowels in the word)

Labourer : Spade :: Sculptor : ?

- Ans  1. Axe  
 2. Chisel  
 3. Sword  
 4. Pen

Question ID : 26433068054  
Status : Answered  
Chosen Option : 2

Section : Part-B-General Knowledge and General awareness

**Q.1** Which of the following is a secondary sector activity?

- Ans  1. Mining  
 2. Forestry  
 3. Manufacturing  
 4. Quarrying

Question ID : 264330116093  
Status : Answered  
Chosen Option : 3

**Q.2** What are Kho-Kho players sitting in the squares called?

- Ans  1. Runners  
 2. Active Chaser  
 3. Chasers  
 4. Blockers

Question ID : 26433092333  
Status : Answered  
Chosen Option : 4

**Q.3** Which two categories of age group are considered in Khelo India Youth Games?

- Ans  1. Under 14 and Under 21  
 2. Under 17 and Under 21  
 3. Under 17 and Under 25  
 4. Under 17 and Under 14

Question ID : 264330115960  
Status : Answered  
Chosen Option : 2

Q.4 Kelucharan Mohapatra was related to which classical dance form?

- Ans
- 1. Manipuri
  - 2. Kathakali
  - 3. Sattriya
  - 4. Odissi

Question ID : 26433072928  
Status : Answered  
Chosen Option : 4

Q.5 \_\_\_\_\_ the then Minister of Agriculture had been a key person in bringing the new agricultural technology to India under Green Revolution

- Ans
- 1. MV Rao
  - 2. C Subramaniam
  - 3. Benjamin Peary Pal
  - 4. MS Swaminathan

Question ID : 26433054804  
Status : Answered  
Chosen Option : 2

Q.6 The council of ministers in a state are appointed on the advice of the \_\_\_\_\_.

- Ans
- 1. President
  - 2. Chief minister
  - 3. Chief justice of High Court
  - 4. Governor

Question ID : 26433089188  
Status : Answered  
Chosen Option : 4

Q.7 GNP stands for \_\_\_\_\_.

- Ans
- 1. gross national product
  - 2. gross negligence product
  - 3. gross net product
  - 4. gross null product

Question ID : 264330115352  
Status : Answered  
Chosen Option : 1

Q.8 Who among the following is related with Mohiniyattam?

- Ans
- 1. Manjit Bawa
  - 2. Ratan Thiyam
  - 3. Kanak Rele
  - 4. Shanti Dave

Question ID : 264330115895  
Status : Answered  
Chosen Option : 2



**Q.9 How is the vegetation affected by construction of large dams?**

- Ans**
- 1. The plants produce nodules to produce nitrogen-fixing bacteria.
  - 2. Vegetation gives rise to oxygen under aerobic conditions.
  - 3. The growth of fungus is a lot.
  - 4. The submerged vegetation rots under anaerobic conditions and gives rise to large amounts of methane, which is also a greenhouse gas.

Question ID : 26433087838  
Status : Answered  
Chosen Option : 4

**Q.10 Which among the following Union Ministers of India inaugurated the 25th National Conference on e-Governance (NCeG) held in Katra, Jammu & Kashmir in November 2022?**

- Ans**
- 1. Arjun Munda
  - 2. Piyush Goyal
  - 3. Pralhad Joshi
  - 4. Jitendra Singh

Question ID : 264330114908  
Status : Answered  
Chosen Option : 4

**Q.11 NITI is abbreviation for\_\_\_\_\_.**

- Ans**
- 1. National Institution for Transferring India
  - 2. National Institution for Telecommunication India
  - 3. National Invention for Transforming India
  - 4. National Institution for Transforming India

Question ID : 264330115374  
Status : Answered  
Chosen Option : 4

**Q.12 Ghiyasuddin Balban ruled in India in which of the following period?**

- Ans**
- 1. 1206-1210
  - 2. 1235-1265
  - 3. 1266-1287
  - 4. 1211-1240

Question ID : 264330115446  
Status : Answered  
Chosen Option : 3

Q.13 Which project is built for hydel power production and irrigation in the Sutlej river basin?

- Ans
- 1. Nagarjuna project
  - 2. Hirakud project
  - 3. Bhakra Nangal project
  - 4. Sardar Sarovar dam

Question ID : 26433091496  
Status : Marked For Review  
Chosen Option : 1

Q.14 Which among the following started "Bharat Jodo Yatra" in September 2022?

- Ans
- 1. Rahul Gandhi
  - 2. Amit Shah
  - 3. Akbaruddin Owaisi
  - 4. Arvind Kejriwal

Question ID : 264330114889  
Status : Answered  
Chosen Option : 1

Q.15 The Non-Cooperation-Khilafat Movement began in January \_\_\_\_\_.

- Ans
- 1. 1925
  - 2. 1928
  - 3. 1921
  - 4. 1911

Question ID : 26433089899  
Status : Answered  
Chosen Option : 1

Q.16 When governments legally obliged food producers to add extra nutrients to particular foods or categories of foods it is called \_\_\_\_\_.

- Ans
- 1. food fortification
  - 2. food protection
  - 3. food adulteration
  - 4. food packaging

Question ID : 264330115266  
Status : Answered  
Chosen Option : 1

**Q.17 Which among the following festivals is also celebrated to remember King Mahabali in Kerala?**

- Ans**  1. Onam  
 2. Vishu  
 3. Ugadi  
 4. Puthando

Question ID : 264330115094  
Status : Answered  
Chosen Option : 3

**Q.18 Fundamental Rights was borrowed from the Constitution of .**

- Ans**  1. United Kingdom  
 2. South Africa  
 3. Germany  
 4. The United States of America

Question ID : 26433089957  
Status : Answered  
Chosen Option : 4

**Q.19 Who took over as the new President of India International Centre (IIC) in June 2022?**

- Ans**  1. Shyam Saran  
 2. Karan Singh  
 3. Narinder Nath Vohra  
 4. Kamaladevi Chattopadhyaya

Question ID : 264330115055  
Status : Answered  
Chosen Option : 4

**Q.20 Which technology is used by doctors to advise his patients sitting at a distance of thousands of kilometers from them?**

- Ans**  1. Tele-Medicine  
 2. Tele-Selling  
 3. Tele-Commerce  
 4. Tele-Porting

Question ID : 264330115599  
Status : Answered  
Chosen Option : 1

Q.1 Three milk bottles of 1 litre, 750 millilitres and 650 millilitres with milk percentage respectively 45%, 50% and 60% are emptied in a same container simultaneously. What is the percentage of milk in the mixture?

- Ans
- 1. 50.625%
  - 2. 52.625%
  - 3. 56.225%
  - 4. 55.625%

Question ID : 26433081704  
Status : Answered  
Chosen Option : 1

Q.2 The area of a triangle whose base and corresponding height are, respectively, 3.2m and 75 cm, is:

- Ans
- 1.  $3 \text{ m}^2$
  - 2.  $2 \text{ m}^2$
  - 3.  $1.2 \text{ m}^2$
  - 4.  $2.5 \text{ m}^2$

Question ID : 26433075508  
Status : Answered  
Chosen Option : 3

Q.3 A dealer marks his goods 30% higher than their cost price. In order to sell his goods at a no profit no loss basis, what discount percentage should he allow (correct up to 2 decimal places)?

- Ans
- 1. 25.25%
  - 2. 23.08%
  - 3. 12.28%
  - 4. 28.08%

Question ID : 26433083043  
Status : Answered  
Chosen Option : 2

Q.4 25 doctors can diagnose 75 patients in 5 hours. If five doctors leave the job, then how many patients can be diagnosed in 6 hours?

- Ans
- 1. 74
  - 2. 70
  - 3. 72
  - 4. 76

Question ID : 26433080185  
Status : Answered  
Chosen Option : 3

Q.5 How many digits will be there after the decimal point in the product of 0.124 and 1.0204?

- Ans
- 1. 8
  - 2. 6
  - 3. 7
  - 4. 5

Question ID : 26433082354  
Status : Answered  
Chosen Option : 3

Q.6 A merchant offers 20% discount on the marked price. He offers a further discount of 10% on the reduced price on cash payments. What does a customer have to pay in cash for an item whose marked price is ₹ 5000 ?

- Ans
- 1. ₹3,600
  - 2. ₹4,000
  - 3. ₹4,800
  - 4. ₹4,200

Question ID : 26433080223  
Status : Answered  
Chosen Option : 1

Q.7 P can do a piece of work in 15 days, while Q can do it in 10 days. If they work on alternate days beginning with P, in how many days will the work be finished?

- Ans
- 1. 12
  - 2. 14
  - 3. 11
  - 4. 13

Question ID : 26433075798  
Status : Answered  
Chosen Option : 1

Q.8 A cop sees a thief at a distance of 120 m. He starts chasing the thief who is running at a speed of 6 m/sec. The cop is chasing him with a speed of 8 m/sec. Find the distance covered by the thief before the cop catches him.

- Ans
- 1. 320 m
  - 2. 360 m
  - 3. 240 m
  - 4. 180 m

Question ID : 26433075953  
Status : Answered  
Chosen Option : 2

Q.9 A police officer follows a thief who is at a distance of 800 m from him. If they run at the speeds of 8 km/h and 7 km/h, respectively, what distance (in metre) does the police officer run to catch the thief?

- Ans  1. 6400  
 2. 4000  
 3. 5600  
 4. 4800

Question ID : 26433075814  
Status : Answered  
Chosen Option : 1

Q.10 Which of the following options can be the value of k if  $\frac{(143 \div 13 \times k - 3 \times 3)}{(6^2 - 7 \times 5 + k^2)} = 1$

- Ans  1. 2  
 2. 4  
 3. 3  
 4. 1

Question ID : 26433082953  
Status : Answered  
Chosen Option : 4

Q.11 The largest distance between any two points on a sphere is 6 units. What is the volume of the sphere?

- Ans  1.  $18\pi$  cubic units  
 2.  $64\pi$  cubic units  
 3.  $36\pi$  cubic units  
 4.  $24\pi$  cubic units

Question ID : 26433071369  
Status : Answered  
Chosen Option : 3

Q.12 The average weight of 10 workers travelling in a boat is increased by 2.8 kg when one of the workers, who weighs 58 kg, is replaced by a new worker. Find the weight of the new worker.

- Ans  1. 86 kg  
 2. 84 kg  
 3. 82 kg  
 4. 68 kg

Question ID : 26433081006  
Status : Marked For Review  
Chosen Option : 2

Q.13 A year ago, Ram's income was Rs.20000 per month and expenditure was Rs.16,000 per month. Now if his income is increased by 10% and expenses increased by 15%. What would be the net change in his savings per month?

- Ans
- 1. Decreased by Rs.500
  - 2. Increased by Rs.500
  - 3. Decreased by Rs.400
  - 4. Increased by Rs.400

Question ID : 26433071304  
Status : Answered  
Chosen Option : 3

Q.14 ₹1,20,000 becomes ₹1,50,528 in two years at a certain rate of compound interest, compounding annually in an investment scheme. In the same scheme, the sum of ₹P is invested and it becomes ₹3,51,232 in three years. What is the value of P?

- Ans
- 1. 3,00,000
  - 2. 2,25,000
  - 3. 2,75,000
  - 4. 2,50,000

Question ID : 26433085460  
Status : Answered  
Chosen Option : 3

Q.15 Renu purchased two watches and each of them at the same price and sold one of them at a profit of 20% and the other at a profit of 24.2%. If the difference between their selling prices is ₹189, then what is the cost price of each of the watches?

- Ans
- 1. ₹8,123
  - 2. ₹6,120
  - 3. ₹4,500
  - 4. ₹7,640

Question ID : 26433080019  
Status : Answered  
Chosen Option : 3

Q.16 In 2021, in a city 30% of the people were vaccinated by Covid 19 vaccinations in the month of June, 50% of the remaining in July and 20% of the remaining in August. Still 84000 are left for vaccination. Find the total population of the city.(Everyone in the town is eligible for the vaccination)

- Ans
- 1. 3.10 lakh
  - 2. 4 lakh
  - 3. 3 lakh
  - 4. 3.5 lakh

Question ID : 26433080158  
Status : Answered  
Chosen Option : 3

Q.17 P and Q together can complete a piece of work in 20 days. Q and R together can complete it in 30 days. If P is twice as good a workman as R, then in how many days can Q alone complete it?

- Ans
- 1. 50
  - 2. 10
  - 3. 60
  - 4. 25

Question ID : 26433083052  
Status : Answered  
Chosen Option : 3

Q.18 Calculate the fourth proportional of 6, 10 and 12.

- Ans
- 1. 16
  - 2. 28
  - 3. 20
  - 4. 24

Question ID : 26433075102  
Status : Answered  
Chosen Option : 3

Q.19 The present population of a town is 95,000. The population increases by 15% in the first year, increases by 20% in the second year and decreases by 12% in the third year. Find the population of the town after three years.

- Ans
- 1. 1,15,368
  - 2. 1,16,568
  - 3. 1,16,368
  - 4. 1,15,568

Question ID : 26433064990  
Status : Answered  
Chosen Option : 1

Q.20 A cloth merchant bought 42 shirts, each at a price of ₹520. He sold each of them for ₹548. Find his percentage profit on each shirt. (Rounded off to two decimal places)

- Ans
- 1. 3.34%
  - 2. 6.42%
  - 3. 2.63%
  - 4. 5.38%

Question ID : 26433080018  
Status : Answered  
Chosen Option : 4



Q.1 Select the most appropriate ANTONYM of the word given in the brackets to fill in the blank and complete the sentence.

The best way to motivate someone for their hard work is to \_\_\_\_\_ (criticise) them for their little accomplishments.

- Ans
- 1. blame
  - 2. censure
  - 3. praise
  - 4. control

Question ID : 26433089840  
Status : Answered  
Chosen Option : 3

Q.2 Select the most appropriate synonym for the underlined word in the given sentence.

When the owner stopped paying the workers, a lot of them went rogue.

- Ans
- 1. ruffian
  - 2. reconnoitre
  - 3. reformer
  - 4. naughty

Question ID : 26433072075  
Status : Answered  
Chosen Option : 1

Q.3 Select the most appropriate synonym of the given word.

Vacate

- Ans
- 1. Fabricate
  - 2. Depart
  - 3. Remember
  - 4. Strain

Question ID : 26433073459  
Status : Answered  
Chosen Option : 2

Q.4 The following sentence has been split into four segments. Identify the segment that contains a grammatical error.

What does kangaroos / eat? / They are / quite strong.

- Ans
- 1. quite strong
  - 2. They are
  - 3. What does kangaroos
  - 4. eat

Question ID : 264330108881  
Status : Answered  
Chosen Option : 3

Q.5 Select the most appropriate synonym of the underlined word.

I believe you are impartial while making decisions.

- Ans
- 1. Biased
  - 2. Fair
  - 3. Good
  - 4. Offensive

Question ID : 26433088999  
Status : Answered  
Chosen Option : 2

Q.6 Select the most appropriate option that can substitute the underlined segment in the given sentence.

The advocate who appeared to the accused was least hopeful of the case.

- Ans
- 1. appeared of the accused
  - 2. appeared by the accused
  - 3. appeared for the accused
  - 4. appeared on the accused

Question ID : 264330103765  
Status : Answered  
Chosen Option : 3

Q.7 Select the most appropriate option to fill in the blank.

Though technology has advanced, environmental problems still have a drastic \_\_\_\_\_ on mankind.

- Ans
- 1. result
  - 2. purpose
  - 3. impact
  - 4. assume

Question ID : 26433073409  
Status : Answered  
Chosen Option : 3

Q.8 Select the most appropriate option to fill in the blanks and make the sentence meaningful.

She was \_\_\_\_\_ for the wrong \_\_\_\_\_ of the past.

- Ans
- 1. fined; deeds
  - 2. fined; duds
  - 3. find; did
  - 4. find; deeds

Question ID : 26433092096  
Status : Answered  
Chosen Option : 1

Q.9 Select the most appropriate meaning of the underlined idiom that can be substituted in the following sentence.

He is not a great leader but, he has the gift of gab.

- Ans
- 1. gift to gamble
  - 2. gift of speaking
  - 3. gift of sleeping
  - 4. gift of a leader

Question ID : 26433072238  
Status : Answered  
Chosen Option : 2

Q.10 Select the MISSPELT word.

- Ans
- 1. Preference
  - 2. Avoidance
  - 3. Correction
  - 4. Toleranse

Question ID : 26433086337  
Status : Answered  
Chosen Option : 4

Q.11 Select the most appropriate ANTONYM of the underlined word in the given sentence.  
The causes of war in the country are very pathetic.

- Ans
- 1. occasions
  - 2. creations
  - 3. consequences
  - 4. factors

Question ID : 26433055485  
Status : Answered  
Chosen Option : 3

Q.12 Select the most appropriate idiom that can substitute the underlined segment in the given sentence.

He has got this notorious reputation of teasing and making fun of people.

- Ans
- 1. cutting corners
  - 2. pulling someone's leg
  - 3. falling prey
  - 4. pulling oneself together

Question ID : 264330100894  
Status : Answered  
Chosen Option : 2

Q.13 Select the most appropriate ANTONYM of the given word.

Pure

- Ans
- 1. Virtuous
  - 2. Foolish
  - 3. Tainted
  - 4. Humble

Question ID : 26433072202  
Status : Answered  
Chosen Option : 3

Q.14 Identify the MISSPELT word in the following sentence.

Since there are numerous topics of discussions with varying requirements, specific disciplines and age range require distinct interactive learning strategies.

- Ans
- 1. interactive
  - 2. requirements
  - 3. disciplines
  - 4. discussions

Question ID : 26433073663  
Status : Answered  
Chosen Option : 4

Q.15 Select the most appropriate option that can substitute the underlined segment in the given sentence. If there is no need to substitute it, select 'No substitution'.

This trailer gives a sneak peak of the magnum opus that has been created by the southern film industry.

- Ans
- 1. gives a sneak peek of the magnum opus
  - 2. give a sneak peak of the magnum opus
  - 3. gives a sneak peak on the magnum opus
  - 4. No substitution

Question ID : 26433091766  
Status : Answered  
Chosen Option : 4

**Comprehension:**

In the following passage, some words have been deleted. Read the passage carefully and select the most appropriate option to fill in each blank.

Buck (1)\_\_\_\_\_ over against the sled, (2)\_\_\_\_\_, sobbing for breath, helpless. This was Spitz's opportunity. He sprang upon Buck, and twice his teeth sank into his (3)\_\_\_\_\_ foe and ripped and tore the flesh to the bone. Then Francois' lash (4)\_\_\_\_\_, and Buck had the satisfaction of watching Spitz receive the worst whipping as yet (5)\_\_\_\_\_ to any of the team.

**SubQuestion No : 16**

**Q.16 Select the most appropriate option to fill in blank number 1.**

- Ans  1. staggered  
 2. pranced  
 3. strutted  
 4. swaggered

Question ID : 26433065192

Status : Answered

Chosen Option : 1

**Comprehension:**

In the following passage, some words have been deleted. Read the passage carefully and select the most appropriate option to fill in each blank.

Buck (1)\_\_\_\_\_ over against the sled, (2)\_\_\_\_\_, sobbing for breath, helpless. This was Spitz's opportunity. He sprang upon Buck, and twice his teeth sank into his (3)\_\_\_\_\_ foe and ripped and tore the flesh to the bone. Then Francois' lash (4)\_\_\_\_\_, and Buck had the satisfaction of watching Spitz receive the worst whipping as yet (5)\_\_\_\_\_ to any of the team.

**SubQuestion No : 17**

**Q.17 Select the most appropriate option to fill in blank number 2.**

- Ans  1. exterminated  
 2. exhausted  
 3. excited  
 4. eloquent

Question ID : 26433065193

Status : Answered

Chosen Option : 2

**Comprehension:**

In the following passage, some words have been deleted. Read the passage carefully and select the most appropriate option to fill in each blank.

Buck (1)\_\_\_\_\_ over against the sled, (2)\_\_\_\_\_, sobbing for breath, helpless. This was Spitz's opportunity. He sprang upon Buck, and twice his teeth sank into his (3)\_\_\_\_\_ foe and ripped and tore the flesh to the bone. Then Francois' lash (4)\_\_\_\_\_, and Buck had the satisfaction of watching Spitz receive the worst whipping as yet (5)\_\_\_\_\_ to any of the team.

**SubQuestion No : 18**

**Q.18 Select the most appropriate option to fill in blank number 3.**

- Ans  1. unresisting  
 2. unsatiable  
 3. undetermined  
 4. unquenchable

Question ID : 26433065194

Status : Answered

Chosen Option : 1

**Comprehension:**

In the following passage, some words have been deleted. Read the passage carefully and select the most appropriate option to fill in each blank.

Buck (1)\_\_\_\_\_ over against the sled, (2)\_\_\_\_\_, sobbing for breath, helpless. This was Spitz's opportunity. He sprang upon Buck, and twice his teeth sank into his (3)\_\_\_\_\_ foe and ripped and tore the flesh to the bone. Then Francois' lash (4)\_\_\_\_\_, and Buck had the satisfaction of watching Spitz receive the worst whipping as yet (5)\_\_\_\_\_ to any of the team.

**SubQuestion No : 19**

**Q.19 Select the most appropriate option to fill in blank number 4.**

- Ans  1. defened  
 2. deteriorated  
 3. demeaned  
 4. descended

Question ID : 26433065195

Status : Answered

Chosen Option : 4

**Comprehension:**

In the following passage, some words have been deleted. Read the passage carefully and select the most appropriate option to fill in each blank.

Buck (1)\_\_\_\_\_ over against the sled, (2)\_\_\_\_\_, sobbing for breath, helpless. This was Spitz's opportunity. He sprang upon Buck, and twice his teeth sank into his (3)\_\_\_\_\_ foe and ripped and tore the flesh to the bone. Then Francois' lash (4)\_\_\_\_\_, and Buck had the satisfaction of watching Spitz receive the worst whipping as yet (5)\_\_\_\_\_ to any of the team.

**SubQuestion No : 20**

**Q.20** Select the most appropriate option to fill in blank number 5.

- Ans  1. advertised  
 2. automated  
 3. administered  
 4. adjudged

Question ID : 26433065196

Status : Answered

Chosen Option : 4

**Section : Part-D-Hindi**

**Q.1** मिश्र वाक्य - 'यह वही लड़का है जिससे मैं मिल चुका हूँ।' निम्नलिखित विकल्पों में से इस वाक्य के लिए कौन सा एक उचित सरल वाक्य होगा?

- Ans  1. लड़का है जिससे मैं मिल चुका हूँ।  
 2. इस लड़के से मैं मिल चुका हूँ।  
 3. यह लड़का है जिससे मिल चुका हूँ।  
 4. वही लड़का है जिससे मैं मिल चुका हूँ।

Question ID : 26433062439

Status : Not Answered

Chosen Option : --

**Q.2** 'जो छूने योग्य न हो' वाक्यांश के लिए इनमें से सही शब्द क्या है?

- Ans  1. अचूक  
 2. अमर  
 3. अछूत  
 4. अजर

Question ID : 26433070140

Status : Not Answered

Chosen Option : --

**Q.3** विकल्पों में दिए गए किस शब्द के साथ कारक चिह्न जुड़ा हुआ है?

- Ans  1. कर्मों  
 2. सबको  
 3. फल  
 4. पड़ता

Question ID : 26433085035

Status : Not Answered

Chosen Option : --

Q.4 'रक्त' शब्द के लिए समानार्थी शब्द नहीं है-

Ans  1. आनन

2. लहू

3. रुधिर

4. लोहित

Question ID : 26433085083

Status : Not Answered

Chosen Option : --

Q.5 'समुचित स्वच्छता स्वास्थ्य के लिए आवश्यक है।' इस वाक्य के किस शब्द में वर्तनीगत अशुद्धि है?

Ans  1. स्वास्थ्य

2. स्वच्छता

3. समुचित

4. आवश्यक

Question ID : 26433085067

Status : Not Answered

Chosen Option : --

Q.6 'नेताजी की मृत्यु क्षोभजनक है।' इस वाक्य में रेखांकित शब्द के स्थान पर निम्न में से कौन सा शब्द उपयुक्त होगा?

Ans  1. दुःखद

2. सुखद

3. निराशा

4. सहज

Question ID : 26433085058

Status : Not Answered

Chosen Option : --

Q.7 'अंग-अंग \_\_\_\_\_ होना'

निम्न में से उपयुक्त शब्द द्वारा उपरोक्त मुहावरे में रिक्त स्थान की पूर्ति कीजिए।

Ans  1. चमकदार

2. ढीला

3. बोझिल

4. चोटिल

Question ID : 26433069691

Status : Not Answered

Chosen Option : --



Q.8 निम्नलिखित में से सर्वनाम सम्बन्धी अशुद्धि युक्त वाक्य का चयन कीजिए।

- Ans
- 1. यह उनका आदेश है।
  - 2. मेरे लिए तुम क्या लाये हो?
  - 3. हमारे रीति-रिवाज आपसे भिन्न हैं।
  - 4. मेरे में अनंत शक्ति है।

Question ID : 26433063001  
Status : Not Answered  
Chosen Option : --

Q.9 'जो पर के अधीन है' वाक्यांश के लिए एक शब्द \_\_\_\_\_ है।

- Ans
- 1. पहलवान
  - 2. परोपकारी
  - 3. पारिश्रमिक
  - 4. पराधीन

Question ID : 26433062940  
Status : Not Answered  
Chosen Option : --

Q.10 निम्न में से कौन-सा शब्द 'पहाड़' शब्द का पर्यायवाची शब्द नहीं है?

- Ans
- 1. भूधर
  - 2. पर्वत
  - 3. अमल
  - 4. गिरि

Question ID : 26433067079  
Status : Not Answered  
Chosen Option : --

Q.11 निम्नलिखित वाक्य के रिक्त स्थान में सबसे उपयुक्त मुहावरा क्या होगा?  
'शिवाजी ने औरंगजेब की \_\_\_\_\_ थी।'

- Ans
- 1. कमर ठोक दी
  - 2. कमर तोड़ दी
  - 3. कमर टिका दी
  - 4. कमर बांध दी

Question ID : 26433066728  
Status : Not Answered  
Chosen Option : --

Q.12 निम्न वाक्य में रेखांकित अंश के स्थान पर सबसे उपयुक्त विकल्प कौन-सा होगा?  
हमें अपने माता-पिता की शुश्रूषा करनी चाहिए।

- Ans
- 1. दिनचर्या
  - 2. सेवा
  - 3. नौकरी
  - 4. बात-चीत

Question ID : 26433072586  
Status : Not Answered  
Chosen Option : --

Q.13 'गुड़ गन्ने के रसे से बनता है।' इस वाक्य के किस शब्द में वर्तनीगत अशुद्धि है?

- Ans
- 1. रसे
  - 2. गुड़
  - 3. गन्ने
  - 4. बनता

Question ID : 26433085064  
Status : Not Answered  
Chosen Option : --

Q.14 'मोहन की उम्र के अनुसार इतना भोजन पर्याप्त है।' इस वाक्य में प्रयुक्त 'पर्याप्त' शब्द का अर्थ क्या है?

- Ans
- 1. आवश्यकता से कम
  - 2. उपयुक्त
  - 3. आवश्यकता से अधिक
  - 4. आवश्यक

Question ID : 26433080918  
Status : Not Answered  
Chosen Option : --

Q.15 निम्न में से किस वाक्य में 'अंचल' के सही अनेकार्थी शब्द का प्रयोग हुआ है?

- Ans
- 1. मैंने उस नाटक का प्रथम अंक पढ़ लिया।
  - 2. अंकुश के माध्यम से हाथी को नियंत्रित किया गया।
  - 3. इस प्रदेश में हरियाली अधिक है।
  - 4. शरीर के सभी अंग शिथिल हो गए।

Question ID : 26433085141  
Status : Not Answered  
Chosen Option : --

**Comprehension:**

निम्नलिखित गद्यांश में कुछ शब्दों को हटा दिया गया है। दिए गए विकल्पों की सहायता से रिक्त स्थानों की पूर्ति कीजिए। प्रत्येक संख्या के लिए सबसे उपयुक्त विकल्प का चयन कीजिए।

1. \_\_\_\_\_ की खोज के साथ एक नए युग की शुरुआत हुई। अब आदमी अपने 2. \_\_\_\_\_ को लिखकर रखने लगा, जिससे वह 'सभ्य' कहा जाने लगा। आदमी के लिखना आरंभ करने से ही 3. \_\_\_\_\_ का आरंभ हुआ और एक पीढ़ी के विचार दूसरी पीढ़ी तक पहुंचने लगे। इसी के साथ 4. \_\_\_\_\_ गति तेज़ हुई। इस प्रकार एक नए युग की 5. \_\_\_\_\_ हुई।

**SubQuestion No : 16**

Q.16 रिक्त स्थान 1 की पूर्ति के लिए सबसे उपयुक्त विकल्प का चयन करें।

- Ans  1. तकनीकी  
 2. अक्षर  
 3. शब्द  
 4. छंद

Question ID : 264330110945

Status : Not Answered

Chosen Option : --

**Comprehension:**

निम्नलिखित गद्यांश में कुछ शब्दों को हटा दिया गया है। दिए गए विकल्पों की सहायता से रिक्त स्थानों की पूर्ति कीजिए। प्रत्येक संख्या के लिए सबसे उपयुक्त विकल्प का चयन कीजिए।

1. \_\_\_\_\_ की खोज के साथ एक नए युग की शुरुआत हुई। अब आदमी अपने 2. \_\_\_\_\_ को लिखकर रखने लगा, जिससे वह 'सभ्य' कहा जाने लगा। आदमी के लिखना आरंभ करने से ही 3. \_\_\_\_\_ का आरंभ हुआ और एक पीढ़ी के विचार दूसरी पीढ़ी तक पहुंचने लगे। इसी के साथ 4. \_\_\_\_\_ गति तेज़ हुई। इस प्रकार एक नए युग की 5. \_\_\_\_\_ हुई।

**SubQuestion No : 17**

Q.17 रिक्त स्थान 2 की पूर्ति के लिए सबसे उपयुक्त विकल्प का चयन करें।

- Ans  1. खेलना-कूदना  
 2. लेखा-जोखा  
 3. पढ़ाई-लिखाई  
 4. हिसाब-किताब

Question ID : 264330110946

Status : Not Answered

Chosen Option : --

**Comprehension:**

निम्नलिखित गद्यांश में कुछ शब्दों को हटा दिया गया है। दिए गए विकल्पों की सहायता से रिक्त स्थानों की पूर्ति कीजिए। प्रत्येक संख्या के लिए सबसे उपयुक्त विकल्प का चयन कीजिए।

1. \_\_\_\_\_ की खोज के साथ एक नए युग की शुरुआत हुई। अब आदमी अपने 2. \_\_\_\_\_ को लिखकर रखने लगा, जिससे वह 'सभ्य' कहा जाने लगा। आदमी के लिखना आरंभ करने से ही 3. \_\_\_\_\_ का आरंभ हुआ और एक पीढ़ी के विचार दूसरी पीढ़ी तक पहुंचने लगे। इसी के साथ 4. \_\_\_\_\_ गति तेज़ हुई। इस प्रकार एक नए युग की 5. \_\_\_\_\_ हुई।

**SubQuestion No : 18**

Q.18 रिक्त स्थान 3 की पूर्ति के लिए सबसे उपयुक्त विकल्प का चयन करें।

- Ans
- 1. अंग्रेजी
  - 2. मराठी
  - 3. संस्कृत
  - 4. इतिहास

Question ID : 264330110947

Status : Not Answered

Chosen Option : --

**Comprehension:**

निम्नलिखित गद्यांश में कुछ शब्दों को हटा दिया गया है। दिए गए विकल्पों की सहायता से रिक्त स्थानों की पूर्ति कीजिए। प्रत्येक संख्या के लिए सबसे उपयुक्त विकल्प का चयन कीजिए।

1. \_\_\_\_\_ की खोज के साथ एक नए युग की शुरुआत हुई। अब आदमी अपने 2. \_\_\_\_\_ को लिखकर रखने लगा, जिससे वह 'सभ्य' कहा जाने लगा। आदमी के लिखना आरंभ करने से ही 3. \_\_\_\_\_ का आरंभ हुआ और एक पीढ़ी के विचार दूसरी पीढ़ी तक पहुंचने लगे। इसी के साथ 4. \_\_\_\_\_ गति तेज़ हुई। इस प्रकार एक नए युग की 5. \_\_\_\_\_ हुई।

**SubQuestion No : 19**

Q.19 रिक्त स्थान 4 की पूर्ति के लिए सबसे उपयुक्त विकल्प का चयन करें।

- Ans
- 1. विनाश की
  - 2. पतन की
  - 3. अधोमुख
  - 4. विकास की

Question ID : 264330110948

Status : Not Answered

Chosen Option : --

**Comprehension:**

निम्नलिखित गद्यांश में कुछ शब्दों को हटा दिया गया है। दिए गए विकल्पों की सहायता से रिक्त स्थानों की पूर्ति कीजिए। प्रत्येक संख्या के लिए सबसे उपयुक्त विकल्प का चयन कीजिए।

1. \_\_\_\_\_ की खोज के साथ एक नए युग की शुरुआत हुई। अब आदमी अपने 2. \_\_\_\_\_ को लिखकर रखने लगा, जिससे वह 'सभ्य' कहा जाने लगा। आदमी के लिखना आरंभ करने से ही 3. \_\_\_\_\_ का आरंभ हुआ और एक पीढ़ी के विचार दूसरी पीढ़ी तक पहुंचने लगे। इसी के साथ 4. \_\_\_\_\_ गति तेज़ हुई। इस प्रकार एक नए युग की 5. \_\_\_\_\_ हुई।

**SubQuestion No : 20**

**Q.20** रिक्त स्थान 5 की पूर्ति के लिए सबसे उपयुक्त विकल्प का चयन करें।

- Ans**
- 1. शुरुआत
  - 2. अंत
  - 3. अवशिष्ट
  - 4. शेष

Question ID : 264330110949

Status : Not Answered

Chosen Option : --

KD Job Updates

# Constable GD in CAPFs SSF Rifleman GD in Assam Rifles and Sepoy in NCB Examination 2022

Roll Number	<b>KD Job Updates</b>
Candidate Name	<b>KD Job Updates</b>
Venue Name	Jaipur Engineering College
Exam Date	06/02/2023
Exam Time	2:30 PM - 3:30 PM
Subject	Constable GD Examination 2022

Section : **Part-A-General Intelligence and Reasoning**

**Q.1** Select the option that is related to the third word in the same way as the second word is related to the first word. (The words must be considered as meaningful English words and must not be related to each other based on the number of letters/number of consonants/vowels in the word.)  
Painter : Brush :: Doctor : ?

- Ans
- 1. Plant
  - 2. Plastic
  - 3. Stethoscope
  - 4. Coal

Question ID : 26433057693  
Status : Answered  
Chosen Option : 3

**Q.2** Select the option that is related to the fifth letter-cluster in the same way as the second letter-cluster is related to the first letter-cluster and the fourth letter-cluster is related to the third letter-cluster.  
CLARITY : DMBSJUZ :: PRICE : QSJDF :: RAINBOW : ?

- Ans
- 1. SBJOCPX
  - 2. SXBJOCP
  - 3. SBCOJPX
  - 4. SJOCPXB

Question ID : 26433070323  
Status : Answered  
Chosen Option : 1

**Q.3** Five people are sitting around a circular table facing outwards- L, M, N, O and P. P is sitting to the immediate right of L. M is sitting second right from P. N is the immediate neighbour of P and M. Who is sitting to the immediate left of L?

- Ans
- 1. P
  - 2. O
  - 3. M
  - 4. N

Question ID : 26433074609  
Status : Answered  
Chosen Option : 2

Q.4 Which of the following term will replace the question mark (?) in the given series?  
XZVU, UYST, ?, OWMR, LVJQ

- Ans
- 1. RYPS
  - 2. RZPS
  - 3. RXPS
  - 4. SXQS

Question ID : 26433068310  
Status : Answered  
Chosen Option : 3

Q.5 Select the set in which the numbers are related in the same way as are the numbers of the following sets.

(NOTE : Operations should be performed on the whole numbers, without breaking down the numbers into its constituent digits. E.g. 13 – Operations on 13 such as adding/subtracting/multiplying etc. to 13 can be performed. Breaking down 13 into 1 and 3 and then performing mathematical operations on 1 and 3 is not allowed)  
(5, 9, 450)  
(7, 12, 840)

- Ans
- 1. (8, 12, 930)
  - 2. (7, 11, 760)
  - 3. (10, 13, 1350)
  - 4. (6, 9, 540)

Question ID : 26433076540  
Status : Answered  
Chosen Option : 4

Q.6 In a code language, 'red ribbon' is coded as 'cu du', 'apple is red' is coded as 'nu mu cu', 'radish is white' is coded as 'mu ku ru', 'eat radish' is coded as 'ru pu'. What is the code for the word 'white'?

- Ans
- 1. ku
  - 2. ru
  - 3. mu
  - 4. pu

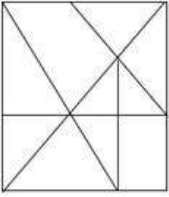
Question ID : 26433082270  
Status : Answered  
Chosen Option : 1

Q.7 K, L, M, N, S, and P are 6 friends sitting around a circular table facing the centre. P is third to the left of S. K is to the immediate left of S. K and L are sitting opposite each other. M is sitting to the immediate right of S. Who is sitting opposite M?

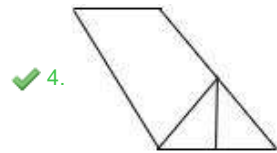
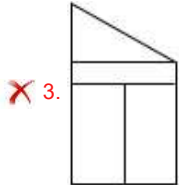
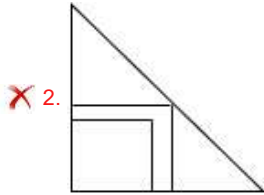
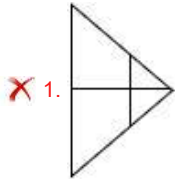
- Ans
- 1. K
  - 2. P
  - 3. N
  - 4. L

Question ID : 26433080432  
Status : Answered  
Chosen Option : 3

Q.8 Select the option figure which is embedded in the given figure. (Rotation is NOT allowed)



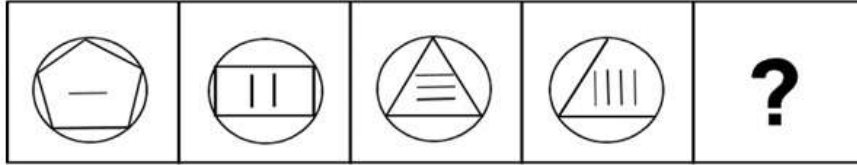
Ans



Question ID : 26433069345  
Status : Answered  
Chosen Option : 4

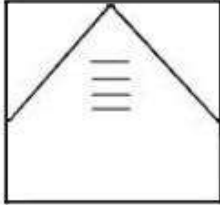


**Q.9** Select the figure from among the given options that can replace the question mark (?) in the following series.

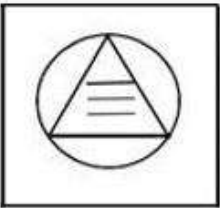


Ans

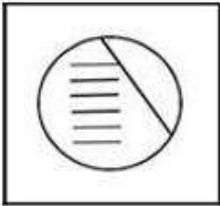
✗ 1.



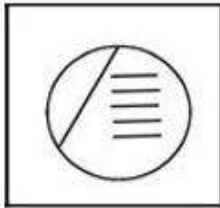
✗ 2.



✗ 3.



✓ 4.



KD Job Updates

Question ID : 26433080488  
 Status : Answered  
 Chosen Option : 4

**Q.10** Which letter-cluster will replace the question mark (?) to complete the given series?  
 USRP, OMLJ, IGFD, CAZX ?

- Ans
- ✗ 1. XUVT
  - ✓ 2. WUTR
  - ✗ 3. WVTS
  - ✗ 4. XVUS

Question ID : 26433068437  
 Status : Answered  
 Chosen Option : 2

Q.11 Select the number from among the given options that can replace the question mark (?) in the following series.  
77, 77, 79, 237, 241, ?

- Ans
- 1. 1502
  - 2. 1205
  - 3. 1250
  - 4. 1520

Question ID : 26433079005  
Status : Answered  
Chosen Option : 2

Q.12 In the following equation, which mathematical operations when sequentially placed will make the equation true?  
 $20 * 4 * 8 * 10 * 5$

- Ans
- 1.  $+ * < * *$
  - 2.  $+ + = * *$
  - 3.  $+ * > * *$
  - 4.  $* + > * *$

Question ID : 26433085657  
Status : Answered  
Chosen Option : 1

Q.13 Which of the following numbers will replace the question mark (?) in the given series?  
45, 76, ?, 168, 229

- Ans
- 1. 217
  - 2. 117
  - 3. 171
  - 4. 107

Question ID : 26433068092  
Status : Answered  
Chosen Option : 2

Q.14 Select the correct mirror image of the given figure when the mirror is placed at MN as shown below.

T p E J 4 2 d v c

M ————— N

Ans

✓ 1. T b E 1 4 5 q v c

✗ 2. T d E J 4 5 q v c

✗ 3. c v b 5 4 1 E q T

✗ 4. c v b 2 4 1 E q T

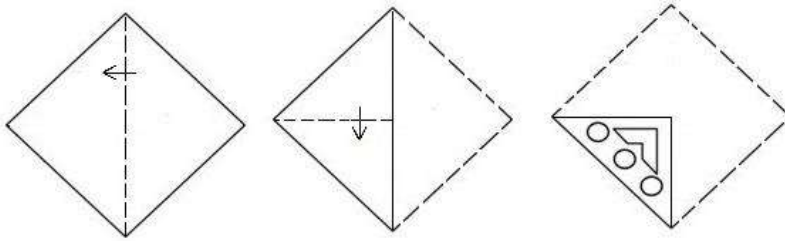
Question ID : 26433080815

Status : Answered

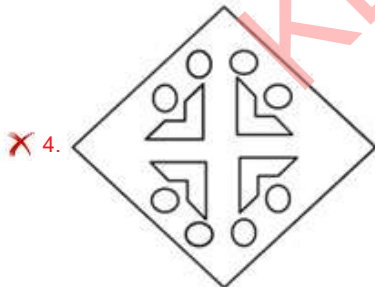
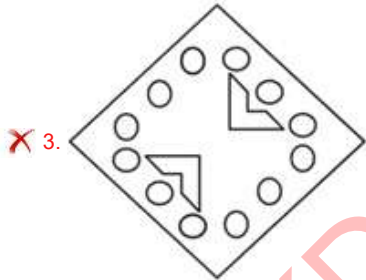
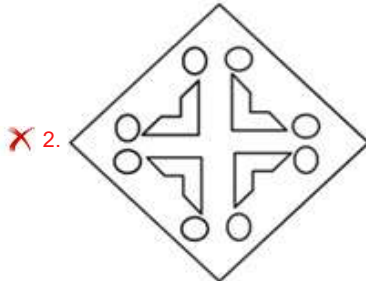
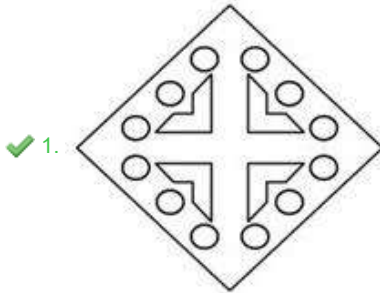
Chosen Option : 1

KD Job Updates

Q.15 A paper is folded and cut as shown below. How will it appear when unfolded?



Ans



Question ID : 26433082052

Status : Answered

Chosen Option : 1

Q.16 A @ B means 'A is the sister of B'.  
A & B means 'A is the brother of B'.  
A # B means 'A is the wife of B'.  
A ^ B means 'A is the mother of B'.  
A + B means 'A is the father of B'.  
If A & C + E ^ G # I & K + M @ O, then which of the following statements is NOT correct?

- Ans  1. C is the maternal grandfather of G.  
 2. O is the daughter of K.  
 3. M is the daughter of K.  
 4. K is the father of O.

Question ID : 26433068954  
Status : Answered  
Chosen Option : 2

Q.17 Which option represents the correct order of the given words as they would appear in the English dictionary?  
1 heated  
2 healed  
3 heaped  
4 hedge  
5 helmet

- Ans  1. 3,4,1,2,5  
 2. 2,3,1,4,5  
 3. 2,1,3,4,5  
 4. 3,2,1,4,5

Question ID : 26433069311  
Status : Answered  
Chosen Option : 2

Q.18 In a certain code language, 'HAUNT' is written as 'KVXIW' and 'BURNT' is written as 'EPUIW'. How will 'THROW' be written in the same code language?

- Ans  1. ZDUDZ  
 2. WBUAZ  
 3. WCUJZ  
 4. ZDURW

Question ID : 26433068144  
Status : Answered  
Chosen Option : 3

Q.19 Which two signs should be interchanged to make the below equation mathematically correct?  
 $49 + 16 \div 7 - 36 \times 16 = 92$

- Ans  1. + and ×  
 2. + and -  
 3. ÷ and +  
 4. × and +

Question ID : 264330117501  
Status : Answered  
Chosen Option : 4

**Q.20** Three Statements are given followed by Three conclusions numbered I, II and III. Assuming the statements to be true, even if they seem to be at variance with commonly known facts, decide which of the conclusions logically follow(s) from the statements.

Statements:

All books are plastic.  
Some plastic are cups.  
All cups are glass.

Conclusions:

I. Some plastic are books.  
II. All plastic are cups.  
III. Some cups are glass.

- Ans
- 1. Both conclusions I and II follow.
  - 2. All conclusions follow.
  - 3. Both conclusions II and III follow.
  - 4. Both conclusions I and III follow.

Question ID : 26433074638

Status : Answered

Chosen Option : 4

Section : Part-B-General Knowledge and General awareness

**Q.1** The Parliamentary form of government is also referred to as the \_\_\_\_\_ model.

- Ans
- 1. Theocracy
  - 2. Westminster
  - 3. Plutocracy
  - 4. Communist

Question ID : 26433089177

Status : Answered

Chosen Option : 1

**Q.2** Which is the smallest union territory of India area-wise?

- Ans
- 1. Puducherry
  - 2. Lakshwadeep
  - 3. Andaman and Nicobar Island
  - 4. Dadra & Nagar Haveli and Daman and Diu

Question ID : 264330116047

Status : Not Attempted and Marked For Review

Chosen Option : --

**Q.3** Various Industrialists came together in 1944 and drafted a joint proposal for setting up a planned economy in India. It is famously known as the \_\_\_\_\_ Plan.

- Ans
- 1. Bombay
  - 2. National
  - 3. Five Year
  - 4. Industrial

Question ID : 264330116133

Status : Answered

Chosen Option : 3

Q.4 People involved in \_\_\_\_\_ sector, process the primary materials and convert them into finished goods.

- Ans
- 1. irrigation
  - 2. education
  - 3. secondary
  - 4. primary

Question ID : 264330115406  
Status : Answered  
Chosen Option : 3

Q.5 The Pey Jal Survekshan under \_\_\_\_\_ was launched by Minister of Housing and Urban Affairs in September, 2022.

- Ans
- 1. AMRUT 2.0
  - 2. Namami Gange
  - 3. Atal Jal Puri
  - 4. Jal Shakti

Question ID : 264330116184  
Status : Answered  
Chosen Option : 1

Q.6 Gangaur Festival is celebrated in honour of the Goddess \_\_\_\_\_ mostly by the womenfolk of Rajasthan.

- Ans
- 1. Sita
  - 2. Lakshmi
  - 3. Parvati
  - 4. Durga

Question ID : 264330115118  
Status : Answered  
Chosen Option : 3

Q.7 Nalanda University was established by \_\_\_\_\_ in the 5th century.

- Ans
- 1. Skandagupta
  - 2. Chandragupta II
  - 3. Kumaragupta
  - 4. Samudragupta

Question ID : 264330115460  
Status : Answered  
Chosen Option : 3

Q.8 The host and winner state for the Khelo India Youth Games 2020 edition is \_\_\_\_\_ .

- Ans  1. Maharashtra  
 2. Assam and Maharashtra, respectively  
 3. Maharashtra and Assam, respectively  
 4. Assam

Question ID : 26433089929  
Status : Answered  
Chosen Option : 1

Q.9 El Nino is a phenomenon in which a warm ocean current that flows past the \_\_\_\_\_ coast, in place of the cold current, every 2 to 5 years.

- Ans  1. Peruvian  
 2. Brazilian  
 3. Chilean  
 4. Argentinian

Question ID : 264330115990  
Status : Not Answered  
Chosen Option : --

Q.10 A \_\_\_\_\_ is a group of people who come together to contest elections and hold power in the government.

- Ans  1. political party  
 2. proletariat  
 3. municipality  
 4. judiciary

Question ID : 264330115665  
Status : Answered  
Chosen Option : 2

Q.11 The recently released book "Madam Sir" narrates the story of which of the following woman IPS officers?

- Ans  1. Kiran Bedi  
 2. Manjari Jaruhar  
 3. Sanjukta Parashar  
 4. Kanchan Chaudhary Bhattacharya

Question ID : 264330114991  
Status : Answered  
Chosen Option : 4



Q.12 In India, which programme provides food grains and other essential commodities at subsidised prices in rural and urban areas?

- Ans
- 1. Gramdan
  - 2. Buffer Stock
  - 3. Public Distribution System
  - 4. Bhoodan

Question ID : 264330115535  
Status : Answered  
Chosen Option : 3

Q.13 As of November 2022, who among the following is the Administrator of Lakshadweep, India?

- Ans
- 1. Devendra Kumar Joshi
  - 2. Manoj Sinha
  - 3. Praful Patel
  - 4. Mamata Banerjee

Question ID : 264330114942  
Status : Answered  
Chosen Option : 1

Q.14 Loans create \_\_\_\_\_, as they have to be returned to the lender in a certain period of time.

- Ans
- 1. asset
  - 2. growth
  - 3. equity
  - 4. liability

Question ID : 264330115288  
Status : Not Answered  
Chosen Option : --

Q.15 Who among the following received the Parishad Samman by the Delhi government?

- Ans
- 1. Anuradha Pandey
  - 2. Shovana Narayan
  - 3. Kelucharan Mohapatra
  - 4. Vempati Chinna Satyam

Question ID : 264330115838  
Status : Not Answered  
Chosen Option : --

**Q.16 Which of the following was the main argument put forward by the British for the partition of Bengal in 1905?**

- Ans
- 1. Development of trade
  - 2. Educational reforms
  - 3. Administrative convenience
  - 4. Religious harmony

Question ID : 26433089885  
Status : Answered  
Chosen Option : 3

**Q.17 Which gas is released on burning of natural gas?**

- Ans
- 1. Carbon dioxide
  - 2. Hydrogen
  - 3. Hydrogen sulphide
  - 4. Ozone

Question ID : 26433087847  
Status : Answered  
Chosen Option : 1

**Q.18 Janaki Prasad is associated with which Gharana of Kathak?**

- Ans
- 1. Lucknow gharana
  - 2. Banaras gharana
  - 3. Jaipur gharana
  - 4. Raigarh gharana

Question ID : 26433072919  
Status : Answered  
Chosen Option : 4

**Q.19 What comes at the top of the food guide pyramid?**

- Ans
- 1. cereal grains
  - 2. fats and sugars
  - 3. fruits and vegetables
  - 4. Pulses and legumes

Question ID : 264330115221  
Status : Answered  
Chosen Option : 1

**Q.20** Which of the following is NOT correctly matched?

- Ans  1. 2022 Winter Olympic Games – Beijing  
 2. 2010 Winter Olympic Games – London  
 3. 2014 Winter Olympic Games – Sochi  
 4. 2018 Winter Olympic Games – PyeongChang

Question ID : 26433090752  
Status : Not Answered  
Chosen Option : --

Section : Part-C-Elementary Mathematics

**Q.1** The capacity of a cylindrical tank is  $6,160 \text{ m}^3$ . Its base diameter is 28 m. The depth of this tank is:

Take  $\pi = \frac{22}{7}$

- Ans  1. 10 m  
 2. 5 m  
 3. 8 m  
 4. 15 m

Question ID : 26433076055  
Status : Answered  
Chosen Option : 1

**Q.2** If 17% of 630 = 35% of x, then what is the value of x?

- Ans  1. 356  
 2. 310  
 3. 306  
 4. 308

Question ID : 26433075645  
Status : Answered  
Chosen Option : 4

**Q.3**

Find the volume of a cone whose radius is 7 inches and height is 27 inches.

(Use  $\pi = \frac{22}{7}$ )

- Ans  1. 1420 inches<sup>3</sup>  
 2. 1386 inches<sup>3</sup>  
 3. 1523 inches<sup>3</sup>  
 4. 1618 inches<sup>3</sup>

Question ID : 26433080069  
Status : Answered  
Chosen Option : 2

Q.4 A bought a number of mangoes at 2 for ₹5 and an equal number at 3 for ₹5. To make a profit of 20% she should sell a dozen for:

- Ans
- 1. ₹30
  - 2. ₹25
  - 3. ₹16
  - 4. ₹12

Question ID : 26433076267  
Status : Answered  
Chosen Option : 1

Q.5 The compound interest on a principal in 3 years is 33.1% of the principal if the interest is compounded annually. Find the rate of interest per annum :

- Ans
- 1. 8%
  - 2. 10%
  - 3. 5%
  - 4. 11%

Question ID : 26433081720  
Status : Answered  
Chosen Option : 2

Q.6 The ratio of the third proportional of P and Q and the fourth proportional of P, Q and R is 5 : 6, then Q : R is:

- Ans
- 1. 6 : 5
  - 2. 2 : 3
  - 3. 5 : 6
  - 4. 3 : 2

Question ID : 26433074964  
Status : Not Attempted and Marked For Review  
Chosen Option : --

Q.7 By selling a refrigerator for Rs.28,448, a shopkeeper makes a profit of 12%. If the profit is reduced to 8%, what is the new selling price of the refrigerator?

- Ans
- 1. Rs.24,500
  - 2. Rs.26,342
  - 3. Rs.25,400
  - 4. Rs.27,432

Question ID : 26433080303  
Status : Not Attempted and Marked For Review  
Chosen Option : --

**Q.8** Height of a plant increases at the rate of 2% per annum. If its present height is 1.2 m, then what will be the height of plant after three years ?

- Ans
- 1. 1.254 m
  - 2. 1.253 m
  - 3. 1.263 m
  - 4. 1.273 m

Question ID : 26433090260  
Status : Not Answered  
Chosen Option : --

**Q.9** Two trains start at the same time from Mumbai and Delhi, and proceed towards each other at the speeds of 15 km/h and 26 km/h respectively. When they meet, it is found that one train has travelled 99 km more than the other. The distance between the two stations is:

- Ans
- 1. 570 km
  - 2. 632 km
  - 3. 414 km
  - 4. 369 km

Question ID : 26433080052  
Status : Answered  
Chosen Option : 4

**Q.10** Find the square of Z. Z is the remainder when the smallest 4-digit number exactly divisible by 24 and 36 is divided by 40.

- Ans
- 1. 144
  - 2. 36
  - 3. 100
  - 4. 64

Question ID : 264330116659  
Status : Answered  
Chosen Option : 4

Q.11 A can complete a work in 15 days. A started the work alone and work for 4 days. B alone complete the remaining work in 18 days. In how many days will A and B together finish the work?

Ans

1.  $7\frac{6}{29}$

2.  $9\frac{9}{29}$

3.  $11\frac{1}{29}$

4.  $8\frac{7}{29}$

Question ID : 26433076405

Status : Answered

Chosen Option : 2

Q.12 Two numbers P and Q are such that the sum of 10% of P and 5% of Q is one-fourth of the sum of 15% of P and 25% of Q. Find the ratio of P to Q.

Ans  1. 5 : 2

2. 1 : 5

3. 5 : 1

4. 2 : 5

Question ID : 26433083033

Status : Not Answered

Chosen Option : --

Q.13 Find the third proportional of 5 and 11.

Ans  1. 22.0

2. 22.4

3. 24.2

4. 24.0

Question ID : 26433080326

Status : Answered

Chosen Option : 3

Q.14 A can do a piece of work in 40 days and B can do the same work in 80 days. They work together for 20 days, how much of the work is left to complete?

Ans  1.  $1\frac{1}{2}$

2.  $\frac{1}{4}$

3.  $\frac{4}{5}$

4.  $\frac{3}{2}$

Question ID : 264330116868

Status : Answered

Chosen Option : 2

Q.15 How many prime numbers exist between 50 and 80?

- Ans
- 1. 5
  - 2. 8
  - 3. 6
  - 4. 7

Question ID : 26433082608  
Status : Answered  
Chosen Option : 4

Q.16 In a circular race of 500 m length, A and B start with speeds of 4 m/sec and 5 m/sec, respectively, at the same time from the same point. After how much time will they meet for the first time at the starting point while running in the same direction?

- Ans
- 1. 450 sec
  - 2. 500 sec
  - 3. 400 sec
  - 4. 550 sec

Question ID : 26433063959  
Status : Answered  
Chosen Option : 2

Q.17 Find the difference between the average of the cube of first 5 natural numbers and the average of the square of first 5 natural numbers.

- Ans
- 1. 34
  - 2. 36
  - 3. 30
  - 4. 32

Question ID : 264330116695  
Status : Answered  
Chosen Option : 1

Q.18 Pawan bought a pair of jeans from the store when they were giving a 20 percent discount. If the regular price of the pair of jeans was Rs. 1800, then how much did Pawan pay with the discount?

- Ans
- 1. Rs. 1360
  - 2. Rs. 1590
  - 3. Rs. 1440
  - 4. Rs. 1680

Question ID : 264330116753  
Status : Answered  
Chosen Option : 3

Q.19 Marked price of a table is listed at Rs.1,880. If it's sold at a discount 15%, then what is the selling price of the table?

- Ans
- 1. Rs.1,798
  - 2. Rs.1,498
  - 3. Rs.1,698
  - 4. Rs.1,598

Question ID : 26433075656

Status : Answered

Chosen Option : 4

Q.20 A bike rider covers a fixed distance at a speed of 60 km/h and returns back at a speed of 80 km/h. What is his average speed?

- Ans
- 1.  $71\frac{1}{7}$  km/h
  - 2.  $68\frac{4}{7}$  km/h
  - 3.  $53\frac{3}{7}$  km/h
  - 4.  $63\frac{1}{7}$  km/h

Question ID : 26433076396

Status : Answered

Chosen Option : 2

Section : Part-D-English

Q.1 Select the most appropriate ANTONYM of the given word.

Gratitude

- Ans
- 1. Thanklessness
  - 2. Mercy
  - 3. Appreciation
  - 4. Care

Question ID : 26433073799

Status : Answered

Chosen Option : 1

Q.2 Select the most appropriate homophone to fill in the blank.

He is a good soul. Although the \_\_\_\_\_ of his shoe is worn out, he never asks anyone to help him with money.

- Ans
- 1. soil
  - 2. sole
  - 3. seal
  - 4. sold

Question ID : 26433088795

Status : Answered

Chosen Option : 2



**Q.3** Select the most appropriate option that can substitute the underlined segment in the given sentence.

Don't sit on this bench as it is just painted.

- Ans
- 1. it had painted just
  - 2. it was painted just
  - 3. it had been painted just
  - 4. it has just been painted

Question ID : 26433088169  
Status : Answered  
Chosen Option : 4

**Q.4** Select the INCORRECTLY spelt word.

- Ans
- 1. Anticipate
  - 2. Menipulate
  - 3. Calculate
  - 4. Instigate

Question ID : 26433073497  
Status : Answered  
Chosen Option : 2

**Q.5** Select the most appropriate meaning of the given idiom.

**Better the devil you know than the devil you don't.**

- Ans
- 1. Do not trust unknown and known devils.
  - 2. Being good is better with evil people.
  - 3. Being cruel is better with known people.
  - 4. It is easier to be in a known bad situation than being in an unknown worse situation.

Question ID : 26433073820  
Status : Answered  
Chosen Option : 1

**Q.6** Select the INCORRECTLY spelt word.

- Ans
- 1. Philosophy
  - 2. Passive
  - 3. Horrendous
  - 4. Farmaceutical

Question ID : 26433073732  
Status : Answered  
Chosen Option : 4

Q.7 Select the most appropriate meaning of the given idiom.

Will-o-the-wisp

- Ans
- 1. Having a strong will
  - 2. A splendid dream
  - 3. Being greedy for money
  - 4. An unrealistic or unattainable goal

Question ID : 26433072436  
Status : Marked For Review  
Chosen Option : 1

Q.8 Select the most appropriate option to fill in the blank.

As I review the events of my past life, I realise how \_\_\_\_\_ are the influences that shape our destinies.

- Ans
- 1. artless
  - 2. trumpet
  - 3. crude
  - 4. subtle

Question ID : 26433092833  
Status : Answered  
Chosen Option : 4

Q.9 Select the most appropriate option to substitute the underlined segment in the given sentence.

The monitor of the class don't know the answer.

- Ans
- 1. the class don't knew
  - 2. the class doesn't knew
  - 3. the class doesn't know
  - 4. the class didn't knew

Question ID : 26433093022  
Status : Answered  
Chosen Option : 3

Q.10 Select the most appropriate option to fill in the blank.

The operation is to be distinguished from other forms of heart surgery and, in particular, from the repair of openings between the \_\_\_\_\_.

- Ans
- 1. auricles
  - 2. oracles
  - 3. oculus
  - 4. oracle

Question ID : 26433090387  
Status : Answered  
Chosen Option : 1

Q.11 Select the most appropriate ANTONYM of the given word.

Presumable

- Ans
- 1. Reasonable
  - 2. Forgetful
  - 3. Improbable
  - 4. Credible

Question ID : 26433072210

Status : **Not Attempted and Marked For Review**

Chosen Option : --

Q.12 Select the most appropriate synonym of the given word.

Confuse

- Ans
- 1. Admit
  - 2. Compose
  - 3. Disunion
  - 4. Puzzle

Question ID : 26433072183

Status : **Answered**

Chosen Option : 4

Q.13 Select the most appropriate synonym of the given word.

Deficient

- Ans
- 1. Insufficient
  - 2. Sufficient
  - 3. Distinct
  - 4. Abundant

Question ID : 26433074045

Status : **Answered**

Chosen Option : 1

Q.14 The sentence below is divided into four segments. Select the option that has an error of tense.

I think India will win the 20-20 cricket match.

- Ans
- 1. India will win
  - 2. the 20-20 cricket match
  - 3. No error
  - 4. I think

Question ID : 26433092944

Status : **Answered**

Chosen Option : 3

**Q.15 Select the most appropriate ANTONYM of the given word.**

**Scanty**

- Ans  1. Meagre  
 2. Abundant  
 3. Divine  
 4. Buoyant

Question ID : 26433084685  
Status : Answered  
Chosen Option : 2

**Comprehension:**

In the following passage, some words have been deleted. Read the passage carefully and select the most appropriate option to fill in each blank.

If you (1) \_\_\_\_\_ yourself with the good and righteous, they can only (2) \_\_\_\_\_ you up. If you (3) \_\_\_\_\_ yourself with the others, they will (4) \_\_\_\_\_ you down into the doldrums of mediocrity, and they will keep you there, but only as long as you (5) \_\_\_\_\_ it.

**SubQuestion No : 16**

**Q.16 Select the most appropriate option to fill in blank number 1.**

- Ans  1. retreat  
 2. ignore  
 3. avoid  
 4. surround

Question ID : 26433089319  
Status : Answered  
Chosen Option : 4

**Comprehension:**

In the following passage, some words have been deleted. Read the passage carefully and select the most appropriate option to fill in each blank.

If you (1) \_\_\_\_\_ yourself with the good and righteous, they can only (2) \_\_\_\_\_ you up. If you (3) \_\_\_\_\_ yourself with the others, they will (4) \_\_\_\_\_ you down into the doldrums of mediocrity, and they will keep you there, but only as long as you (5) \_\_\_\_\_ it.

**SubQuestion No : 17**

**Q.17 Select the most appropriate option to fill in blank number 2.**

- Ans  1. replace  
 2. tarnish  
 3. raise  
 4. vanish

Question ID : 26433089320  
Status : Answered  
Chosen Option : 3

**Comprehension:**

In the following passage, some words have been deleted. Read the passage carefully and select the most appropriate option to fill in each blank.

If you (1) \_\_\_\_\_ yourself with the good and righteous, they can only (2) \_\_\_\_\_ you up. If you (3) \_\_\_\_\_ yourself with the others, they will (4) \_\_\_\_\_ you down into the doldrums of mediocrity, and they will keep you there, but only as long as you (5) \_\_\_\_\_ it.

**SubQuestion No : 18**

**Q.18 Select the most appropriate option to fill in blank number 3.**

- Ans  1. encircle  
 2. clarify  
 3. loath  
 4. hide

Question ID : 26433089321  
Status : Answered  
Chosen Option : 1

**Comprehension:**

In the following passage, some words have been deleted. Read the passage carefully and select the most appropriate option to fill in each blank.

If you (1) \_\_\_\_\_ yourself with the good and righteous, they can only (2) \_\_\_\_\_ you up. If you (3) \_\_\_\_\_ yourself with the others, they will (4) \_\_\_\_\_ you down into the doldrums of mediocrity, and they will keep you there, but only as long as you (5) \_\_\_\_\_ it.

**SubQuestion No : 19**

**Q.19 Select the most appropriate option to fill in blank number 4.**

- Ans  1. foster  
 2. elevate  
 3. drag  
 4. nurture

Question ID : 26433089322  
Status : Answered  
Chosen Option : 3

**Comprehension:**

In the following passage, some words have been deleted. Read the passage carefully and select the most appropriate option to fill in each blank.

If you (1) \_\_\_\_\_ yourself with the good and righteous, they can only (2) \_\_\_\_\_ you up. If you (3) \_\_\_\_\_ yourself with the others, they will (4) \_\_\_\_\_ you down into the doldrums of mediocrity, and they will keep you there, but only as long as you (5) \_\_\_\_\_ it.

**SubQuestion No : 20**

**Q.20 Select the most appropriate option to fill in blank number 5.**

- Ans  1. permit  
 2. disregard  
 3. overlook  
 4. forget

Question ID : 26433089323  
Status : Not Answered  
Chosen Option : --

Q.1 'जो बीत गया है' वाक्यांश के लिए सार्थक शब्द है-

- Ans
- 1. आगामी
  - 2. व्यतीत
  - 3. अतीत
  - 4. वर्तमान

Question ID : 26433065863  
Status : Not Answered  
Chosen Option : --

Q.2 वृक्ष काटना अत्यंत घातक है।

रेखांकित शब्द के उचित पर्यायवाची शब्द का चयन कीजिए।

- Ans
- 1. पेड़
  - 2. अंशु
  - 3. यती
  - 4. वित्त

Question ID : 26433079622  
Status : Not Answered  
Chosen Option : --

Q.3 'आपे से बाहर होना' मुहावरे का सही अर्थ है -

- Ans
- 1. अत्यधिक क्रोधित हो जाना
  - 2. विरोध करना
  - 3. डांटना
  - 4. जल जाना

Question ID : 26433065917  
Status : Not Answered  
Chosen Option : --

Q.4 निम्नलिखित में से अशुद्ध वाक्य कौन-सा है?

- Ans
- 1. अनिल ने कल दो खिलौने खरीदे।
  - 2. लक्ष्य ने शिक्षक से विभा की शिकायत की।
  - 3. एक विद्यार्थी को दो पुस्तक मिलेगी।
  - 4. नव्या की बहन शिमला में पढ़ती है।

Question ID : 26433066988  
Status : Not Answered  
Chosen Option : --

Q.5 निम्नलिखित अकर्मक एवं सकर्मक क्रिया शब्द युग्मों में से किसमें त्रुटि है?

- Ans
- 1. खुलना - खोलना
  - 2. मूड़ना - मोड़ना
  - 3. जुड़ना - जोड़ना
  - 4. दिखना - देखना

Question ID : 26433063040  
Status : Not Answered  
Chosen Option : --

Q.6 'आकर्षण' शब्द का विलोम क्या होगा?

- Ans
- 1. अनुपम
  - 2. मनोहर
  - 3. विकर्षण
  - 4. आकर्षित

Question ID : 26433067089  
Status : Not Answered  
Chosen Option : --

Q.7 निम्नलिखित मुहावरों का कौन सा एक विकल्प-युग्म अशुद्ध है?

- Ans
- 1. कान में डाल देना-बता देना
  - 2. खून खौलना-जोश आना
  - 3. कूच कर जाना-चले जाना
  - 4. खून सफेद हो जाना-अपमान करना

Question ID : 26433062558  
Status : Not Answered  
Chosen Option : --

Q.8 निम्न वाक्य में रेखांकित शब्द को विकल्पों में दिए गए शब्दों में से उचित शब्द से बदलें।  
मैंने चित्त में सोचा कि भला ऐसा क्यों होता है!

- Ans
- 1. विचार
  - 2. आत्मा
  - 3. मन
  - 4. व्यवहार

Question ID : 26433062878  
Status : Not Answered  
Chosen Option : --

Q.9 निम्नलिखित विकल्पों में से दिए गए वाक्यांश के लिए उपयुक्त शब्द चुनें।  
वृक्षों और बेलों से घिरा स्थान

- Ans  1. क्यारी  
 2. वन  
 3. कुंज  
 4. कल्प

Question ID : 26433069991  
Status : Not Answered  
Chosen Option : --

Q.10 'पुस्तकालय \_\_\_\_\_',

उपर्युक्त वाक्य में रिक्त स्थान का उपयुक्त विकल्प निम्न में से क्या होगा?

- Ans  1. वह स्थान है, जहाँ बैठकर पढ़ाई मिलती है  
 2. वह स्थान है, जहाँ बैठकर पढ़ाई की जाती है  
 3. वह स्थान है, जहाँ बैठकर बातें की जाती हैं  
 4. वह स्थान है, जहाँ पढ़ाई मिलती है

Question ID : 26433067037  
Status : Not Answered  
Chosen Option : --

Q.11 निम्नलिखित वाक्य में अशुद्धि पहचानें-  
कानून के हाथ लंबे होते हैं।

- Ans  1. हाथ  
 2. होते  
 3. लंबे  
 4. कानून

Question ID : 26433066823  
Status : Not Answered  
Chosen Option : --

Q.12 'कमल' का पर्यायवाची शब्द है-

- Ans  1. सुमन  
 2. पयोद  
 3. पंकद  
 4. पंकज

Question ID : 26433062915  
Status : Not Answered  
Chosen Option : --



Q.13 'कर्मण्य' शब्द का विलोम क्या होगा?

- Ans  1. अकर्मण्य  
 2. निकर्मण्य  
 3. विकर्मण्य  
 4. सकर्मण्य

Question ID : 26433067096  
Status : Not Answered  
Chosen Option : --

Q.14 रेखांकित शब्द-समूह के लिए सर्वाधिक उपयुक्त विकल्प चुनें।  
राज्य के प्रधान शासक द्वारा दिया गया आधिकारिक आदेश पढ़कर मुझे प्रसन्नता हुई।

- Ans  1. आदेश  
 2. अधिकादेश  
 3. नियमावली  
 4. अध्यादेश

Question ID : 26433062283  
Status : Not Answered  
Chosen Option : --

Q.15 निम्नलिखित विकल्पों में से किस एक वाक्य में गुणवाचक विशेषण का उचित प्रयोग नहीं किया गया है?

- Ans  1. कर्मवीर बौना है।  
 2. वह लम्बा है।  
 3. शिवशंकर की शर्ट काली है।  
 4. सुरेश केरल में पढ़ता है।

Question ID : 26433062971  
Status : Not Answered  
Chosen Option : --

#### Comprehension:

नीचे दिए गए गद्यांश से कुछ शब्दों को हटा दिया गया है। गद्यांश के आधार पर पूछे गए प्रश्नों के अनुसार इन रिक्त स्थानों की पूर्ति उपयुक्त शब्दों द्वारा कीजिए।  
सिंह की भाँति राणा ने उनके बीच में 1. \_\_\_\_\_ किया। सत्रहों सरदार पृथ्वी पर झुक गए। उनकी तलवारें 2. \_\_\_\_\_ उठीं और पीठ पर बंधी हुई बड़ी ढालें हिल पड़ी। सेना ने महाराज को देखते ही वज्रध्वनि से 3. \_\_\_\_\_ किया। प्रताप ने एक ऊँचे टीले पर खड़े होकर अपने सरदारों और सेना को सम्बोधित करके कहा, "मेरे प्यारे वीरों, वंशधरों! आज हम वह कार्य करने जा रहे हैं जो हमेशा हमारे 4. \_\_\_\_\_ ने किया है। हम आज मरेंगे अथवा विजय प्राप्त करेंगे। हमारा इस युद्ध में कोई स्वार्थ नहीं है। हम केवल इसलिए युद्ध कर रहे हैं कि हमारी 5. \_\_\_\_\_ में हस्तक्षेप हो रहा है। क्या यहाँ पर कोई ऐसा राजपूत है जो पराया गुलाम बना रहना पसंद करे? जो ऐसा हो उसे मेरी तरफ से छुट्टी है।"

#### SubQuestion No : 16

Q.16 रिक्त स्थान 1 के लिए उपयुक्त शब्द का चयन विकल्पों में से कीजिए।

- Ans  1. आक्रमण  
 2. तांडव  
 3. पदार्पण  
 4. पटाक्षेप

Question ID : 26433069925  
Status : Not Answered  
Chosen Option : --

**Comprehension:**

नीचे दिए गए गद्यांश से कुछ शब्दों को हटा दिया गया है। गद्यांश के आधार पर पूछे गए प्रश्नों के अनुसार इन रिक्त स्थानों की पूर्ति उपयुक्त शब्दों द्वारा कीजिए।  
सिंह की भांति राणा ने उनके बीच में 1. \_\_\_\_\_ किया। सत्रहों सरदार पृथ्वी पर झुक गए। उनकी तलवारें 2. \_\_\_\_\_ उठीं और पीठ पर बंधी हुई बड़ी ढालें हिल पड़ीं। सेना ने महाराज को देखते ही वज्रध्वनि से 3. \_\_\_\_\_ किया। प्रताप ने एक ऊंचे टीले पर खड़े होकर अपने सरदारों और सेना को सम्बोधित करके कहा, "मेरे प्यारे वीरों, वंशधरों! आज हम वह कार्य करने जा रहे हैं जो हमेशा हमारे 4. \_\_\_\_\_ ने किया है। हम आज मरेंगे अथवा विजय प्राप्त करेंगे। हमारा इस युद्ध में कोई स्वार्थ नहीं है। हम केवल इसलिए युद्ध कर रहे हैं कि हमारी 5. \_\_\_\_\_ में हस्तक्षेप हो रहा है। क्या यहाँ पर कोई ऐसा राजपूत है जो पराया गुलाम बना रहना पसंद करे? जो ऐसा हो उसे मेरी तरफ से छुट्टी है।"

**SubQuestion No : 17**

Q.17 रिक्त स्थान 2 के लिए उपयुक्त शब्द का चयन विकल्पों में से कीजिए।

- Ans
- 1. भनभना
  - 2. बजबजा
  - 3. खनखना
  - 4. तड़तड़ा

Question ID : 26433069926

Status : Not Answered

Chosen Option : --

**Comprehension:**

नीचे दिए गए गद्यांश से कुछ शब्दों को हटा दिया गया है। गद्यांश के आधार पर पूछे गए प्रश्नों के अनुसार इन रिक्त स्थानों की पूर्ति उपयुक्त शब्दों द्वारा कीजिए।  
सिंह की भांति राणा ने उनके बीच में 1. \_\_\_\_\_ किया। सत्रहों सरदार पृथ्वी पर झुक गए। उनकी तलवारें 2. \_\_\_\_\_ उठीं और पीठ पर बंधी हुई बड़ी ढालें हिल पड़ीं। सेना ने महाराज को देखते ही वज्रध्वनि से 3. \_\_\_\_\_ किया। प्रताप ने एक ऊंचे टीले पर खड़े होकर अपने सरदारों और सेना को सम्बोधित करके कहा, "मेरे प्यारे वीरों, वंशधरों! आज हम वह कार्य करने जा रहे हैं जो हमेशा हमारे 4. \_\_\_\_\_ ने किया है। हम आज मरेंगे अथवा विजय प्राप्त करेंगे। हमारा इस युद्ध में कोई स्वार्थ नहीं है। हम केवल इसलिए युद्ध कर रहे हैं कि हमारी 5. \_\_\_\_\_ में हस्तक्षेप हो रहा है। क्या यहाँ पर कोई ऐसा राजपूत है जो पराया गुलाम बना रहना पसंद करे? जो ऐसा हो उसे मेरी तरफ से छुट्टी है।"

**SubQuestion No : 18**

Q.18 रिक्त स्थान 3 के लिए उपयुक्त शब्द का चयन विकल्पों में से कीजिए।

- Ans
- 1. मंगलगान
  - 2. शोकगान
  - 3. अभियान
  - 4. जयघोष

Question ID : 26433069927

Status : Not Answered

Chosen Option : --

**Comprehension:**

नीचे दिए गए गद्यांश से कुछ शब्दों को हटा दिया गया है। गद्यांश के आधार पर पूछे गए प्रश्नों के अनुसार इन रिक्त स्थानों की पूर्ति उपयुक्त शब्दों द्वारा कीजिए।  
सिंह की भांति राणा ने उनके बीच में 1. \_\_\_\_\_ किया। सत्रहों सरदार पृथ्वी पर झुक गए। उनकी तलवारें 2. \_\_\_\_\_ उठीं और पीठ पर बंधी हुई बड़ी ढालें हिल पड़ीं। सेना ने महाराज को देखते ही वज्रध्वनि से 3. \_\_\_\_\_ किया। प्रताप ने एक ऊंचे टीले पर खड़े होकर अपने सरदारों और सेना को सम्बोधित करके कहा, "मेरे प्यारे वीरों, वंशधरों! आज हम वह कार्य करने जा रहे हैं जो हमेशा हमारे 4. \_\_\_\_\_ ने किया है। हम आज मरेंगे अथवा विजय प्राप्त करेंगे। हमारा इस युद्ध में कोई स्वार्थ नहीं है। हम केवल इसलिए युद्ध कर रहे हैं कि हमारी 5. \_\_\_\_\_ में हस्तक्षेप हो रहा है। क्या यहाँ पर कोई ऐसा राजपूत है जो पराया गुलाम बना रहना पसंद करे? जो ऐसा हो उसे मेरी तरफ से छुट्टी है।"

**SubQuestion No : 19**

Q.19 रिक्त स्थान 4 के लिए उपयुक्त शब्द का चयन विकल्पों में से कीजिए।

- Ans  1. सहयोगियों  
 2. शत्रुओं  
 3. पूर्वजों  
 4. अनुजों

Question ID : 26433069928

Status : Not Answered

Chosen Option : --

**Comprehension:**

नीचे दिए गए गद्यांश से कुछ शब्दों को हटा दिया गया है। गद्यांश के आधार पर पूछे गए प्रश्नों के अनुसार इन रिक्त स्थानों की पूर्ति उपयुक्त शब्दों द्वारा कीजिए।  
सिंह की भांति राणा ने उनके बीच में 1. \_\_\_\_\_ किया। सत्रहों सरदार पृथ्वी पर झुक गए। उनकी तलवारें 2. \_\_\_\_\_ उठीं और पीठ पर बंधी हुई बड़ी ढालें हिल पड़ीं। सेना ने महाराज को देखते ही वज्रध्वनि से 3. \_\_\_\_\_ किया। प्रताप ने एक ऊंचे टीले पर खड़े होकर अपने सरदारों और सेना को सम्बोधित करके कहा, "मेरे प्यारे वीरों, वंशधरों! आज हम वह कार्य करने जा रहे हैं जो हमेशा हमारे 4. \_\_\_\_\_ ने किया है। हम आज मरेंगे अथवा विजय प्राप्त करेंगे। हमारा इस युद्ध में कोई स्वार्थ नहीं है। हम केवल इसलिए युद्ध कर रहे हैं कि हमारी 5. \_\_\_\_\_ में हस्तक्षेप हो रहा है। क्या यहाँ पर कोई ऐसा राजपूत है जो पराया गुलाम बना रहना पसंद करे? जो ऐसा हो उसे मेरी तरफ से छुट्टी है।"

**SubQuestion No : 20**

Q.20 रिक्त स्थान 5 के लिए उपयुक्त शब्द का चयन विकल्पों में से कीजिए।

- Ans  1. प्रसन्नता  
 2. स्वतंत्रता  
 3. परतंत्रता  
 4. देशभक्ति

Question ID : 26433069929

Status : Not Answered

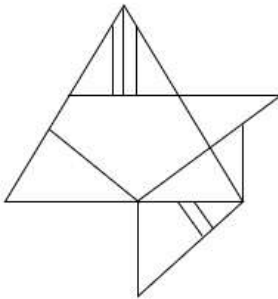
Chosen Option : --

# Constable GD in CAPFs SSF Rifleman GD in Assam Rifles and Sepoy in NCB Examination 2022

Roll Number	KD Job Updates
Candidate Name	KD Job Updates
Venue Name	Pawan Ganga Educational Centre 1
Exam Date	06/02/2023
Exam Time	5:15 PM - 6:15 PM
Subject	Constable GD Examination 2022

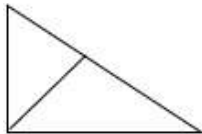
Section : Part-A-General Intelligence and Reasoning

Q.1 Select the option figure which is embedded in the given figure. (Rotation is NOT allowed)

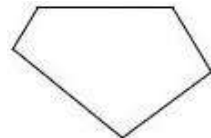


Ans

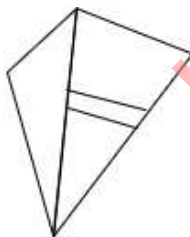
✗ 1.



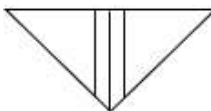
✓ 2.



✗ 3.



✗ 4.



Question ID : 26433069341  
Status : Answered  
Chosen Option : 2

Q.2 If A denotes +, B denotes -, and C denotes  $\times$ , then what will be the value of the following equation?  
20 C 5 A 3 C 2 B 16

- Ans
- 1. 80
  - 2. 100
  - 3. 90
  - 4. 85

Question ID : 26433092971  
Status : Answered  
Chosen Option : 3

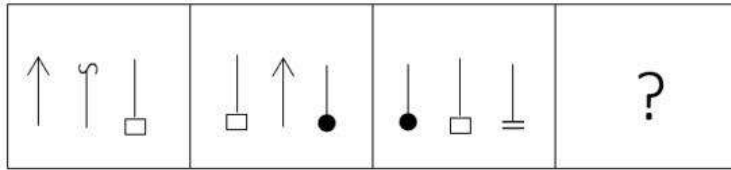
Q.3 Six friends Sarthi, Pari, Vani, Kabir, Arshi, and Kamal, are sitting in a circle. All of them are facing the centre. Sarthi sits second to the left of Pari. Vani sits third to the right of Kabir. Arshi is an immediate neighbour of Pari and Kabir. Who sits fourth to the left of Vani?

- Ans
- 1. Pari
  - 2. Kabir
  - 3. Arshi
  - 4. Kamal

Question ID : 26433069506  
Status : Answered  
Chosen Option : 3

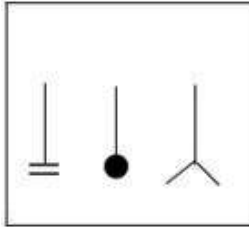
KD Job Updates

**Q.4** Select the figure from among the given options that can replace the question mark (?) in the following series.

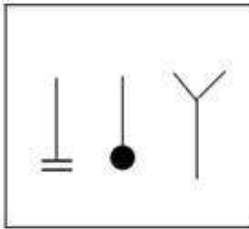


**Ans**

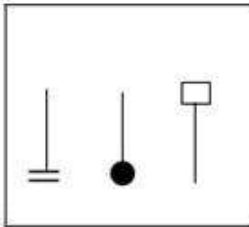
✓ 1.



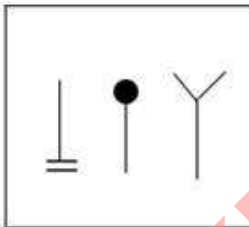
✗ 2.



✗ 3.




✗ 4.



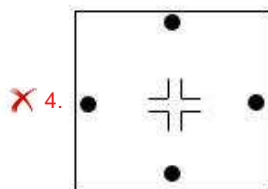
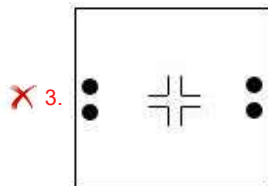
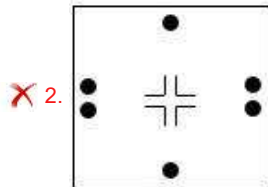
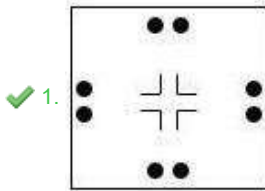
KD Job Updates

Question ID : 26433080760  
 Status : Answered  
 Chosen Option : 2

Q.5 A paper is folded and cut as shown below. How will it appear when unfolded?



Ans



Question ID : 26433090090  
 Status : Answered  
 Chosen Option : 1

Q.6 Select the correct mirror image of the given figure when the mirror is placed at MN as shown below.

**R S 2 T z x w**  
 M ————— N

Ans



Question ID : 26433080803  
 Status : Answered  
 Chosen Option : 2

Q.7 Which of the following terms will replace the question mark (?) in the given series?  
FSCW, HQEU, JOGS, LMIQ, ?

- Ans
- 1. NKLO
  - 2. MLJP
  - 3. MNKO
  - 4. NKKO

Question ID : 26433069445  
Status : Answered  
Chosen Option : 4

Q.8 O,P,Q,R and S are sitting on a circular table facing towards the centre. R is sitting to the immediate left of S. Q is sitting to the immediate right of O. S is the immediate neighbour of R and O. P is sitting to the immediate left of R. Who is sitting to the immediate right of Q?

- Ans
- 1. O
  - 2. P
  - 3. R
  - 4. S

Question ID : 26433074606  
Status : Answered  
Chosen Option : 2

Q.9 Select the option that is related to the fifth letter-cluster in the same way as the second letter-cluster is related to the first letter-cluster and the fourth letter-cluster is related to the third letter-cluster.

REALITY : YEALITR :: SCIENCE : ECIENCS :: ADVERSE : ?

- Ans
- 1. VERSEAD
  - 2. EDVERSA
  - 3. VDAERSE
  - 4. ESREVDVA

Question ID : 26433069636  
Status : Answered  
Chosen Option : 2

Q.10 Which of the following numbers will replace the question mark (?) in the given series?  
96, 48, 60, 30, 42, 21, ?

- Ans
- 1. 30
  - 2. 37
  - 3. 33
  - 4. 32

Question ID : 26433067882  
Status : Not Answered  
Chosen Option : --



Q.11 Which of the following numbers will replace the question mark (?) in the given series?  
12, 23, 45, 56, 78, 89, 111, 122, ?

- Ans  1. 322  
 2. 144  
 3. 43  
 4. 133

Question ID : 26433082736  
Status : Answered  
Chosen Option : 2

Q.12 Select the option that is related to the fifth letter-cluster in the same way as the second letter-cluster is related to the first letter-cluster and the fourth letter-cluster is related to the third letter-cluster.  
GLOW: SOMF :: LIKE: NRQX :: SAVE: ?

- Ans  1. UCTX  
 2. GZFX  
 3. GYEW  
 4. HZEW

Question ID : 26433057493  
Status : Answered  
Chosen Option : 4

Q.13 In a certain code language, STAR is coded as 58, and ALARM is coded as 45. How will STAGE be coded in the same language?

- Ans  1. 51  
 2. 50  
 3. 49  
 4. 52

Question ID : 26433067994  
Status : Answered  
Chosen Option : 4

Q.14 A @ B means 'A is the sister of B'.  
A & B means 'A is the brother of B'.  
A # B means 'A is the wife of B'.  
A ^ B means 'A is the mother of B'.  
A + B means 'A is the father of B'.  
If A & C + E ^ G # I & K + M @ O, then which of the following statements is NOT correct?

- Ans  1. K is the father of O.  
 2. I is the son of E.  
 3. M is the daughter of K.  
 4. C is the maternal grandfather of G.

Question ID : 26433068951  
Status : Answered  
Chosen Option : 2

Q.15 Which of the following terms will replace the question mark (?) in the given series?  
ADLU, EGOO, ?, OMUE, UPXA

- Ans
- 1. ILIR
  - 2. JIIR
  - 3. IJRI
  - 4. IKRI

Question ID : 26433068307  
Status : Answered  
Chosen Option : 2

Q.16 Select the set in which the numbers are related in the same way as are the numbers of the following set.

(NOTE : Operations should be performed on the whole numbers, without breaking down the numbers into its constituent digits. E.g. 13 – Operations on 13 such as adding /subtracting/multiplying etc. to 13 can be performed. Breaking down 13 into 1 and 3 and then performing mathematical operations on 1 and 3 is NOT allowed)  
(9, 14, 161)  
(12, 18, 210)

- Ans
- 1. (23, 40, 371)
  - 2. (40, 20, 340)
  - 3. (11, 33, 348)
  - 4. (29, 17, 322)

Question ID : 26433076486  
Status : Answered  
Chosen Option : 2

Q.17 Select the option that represents the correct order of the given words as they would appear in an English dictionary.

1. TOPOLOGY
2. TOPIC
3. TOPAZ
4. TOUR
5. TORTILLA
6. TORN

- Ans
- 1. 2, 3, 1, 6, 5, 4
  - 2. 1, 3, 2, 6, 5, 4
  - 3. 1, 2, 3, 6, 5, 4
  - 4. 3, 2, 1, 6, 5, 4

Question ID : 26433079380  
Status : Answered  
Chosen Option : 4

Q.18 In this question, three statements are given, followed by two conclusions numbered I and II. Assuming the statements to be true, even if they seem to be at variance with commonly known facts, decide which of the conclusions logically follows/follow from the statements.

Statements:

All bangles are coins.

All coins are anklets.

All anklets are lockets.

Conclusions:

I. All lockets are bangles.

II. Some lockets are coins.

- Ans
- 1. Both conclusions I and II follow.
  - 2. Neither conclusion I nor II follows.
  - 3. Only conclusion I follows.
  - 4. Only conclusion II follows.

Question ID : 26433070392

Status : Answered

Chosen Option : 4

Q.19 Which two signs should be interchanged to make the below equation mathematically correct?

$$104 \div 13 + 60 - 5 \times 2 = 115$$

- Ans
- 1.  $\div$  and  $\times$
  - 2.  $\div$  and  $-$
  - 3.  $+$  and  $\times$
  - 4.  $\times$  and  $-$

Question ID : 264330117498

Status : Answered

Chosen Option : 2

Q.20 In a certain code language, 'ENTITY' is written as 'UOFAVK' and 'EQUITY' is written as 'VRFAVK'. How will 'ESCAPE' be written as in that language?

- Ans
- 1. CSEEP A
  - 2. DTFEPA
  - 3. DTFGR C
  - 4. EPACSE

Question ID : 26433090043

Status : Answered

Chosen Option : 3

Section : Part-B-General Knowledge and General awareness

Q.1 What was the targeted economic growth rate as per the Sixth Five year plan?

- Ans
- 1. 5.8
  - 2. 6.3
  - 3. 5.2
  - 4. 6.0

Question ID : 264330116125

Status : Answered

Chosen Option : 3

Q.2 What is the minimum age of a candidate to become the president of India?

- Ans
- 1. 25
  - 2. 20
  - 3. 35
  - 4. 30

Question ID : 264330115662  
Status : Answered  
Chosen Option : 3

Q.3 Public debt is burdensome if it \_\_\_\_\_ future growth in output.

- Ans
- 1. reduces
  - 2. magnifies
  - 3. increases
  - 4. expands

Question ID : 264330115285  
Status : Answered  
Chosen Option : 1

Q.4 Who became the youngest speaker in the history of the Maharashtra State Assembly in July 2022?

- Ans
- 1. Sajan Shah
  - 2. Sandeep Maheshwari
  - 3. Rahul Narwekar
  - 4. Vivek Bindra

Question ID : 264330114988  
Status : Answered  
Chosen Option : 3

Q.5 In which of the following climates you cannot grow a rubber crop?

- Ans
- 1. tropical climate
  - 2. sub-tropical climate
  - 3. equatorial climate
  - 4. polar climate

Question ID : 264330115532  
Status : Answered  
Chosen Option : 2

**Q.6 Who became the Member of Legislative Assembly from Andheri East constituency in Maharashtra, India in November 2022?**

- Ans  1. Devendra Fadnavis  
 2. Rutuja Latke  
 3. Narayan Rane  
 4. Chandrakant Jadhav

Question ID : 264330114963  
Status : Answered  
Chosen Option : 3

**Q.7 Which is the second most populated state of India as per the Census 2011?**

- Ans  1. Bihar  
 2. Uttar Pradesh  
 3. Jharkhand  
 4. Maharashtra

Question ID : 264330116035  
Status : Answered  
Chosen Option : 1

**Q.8 Given among the following, \_\_\_\_\_ is a food crop**

- Ans  1. jute  
 2. cotton  
 3. rice  
 4. rubber

Question ID : 264330115425  
Status : Answered  
Chosen Option : 3

**Q.9 The Resolution of Non-Cooperation movement was confirmed in the annual session of the Indian National Congress at \_\_\_\_\_ in December 1920.**

- Ans  1. Madras  
 2. Nagpur  
 3. Bhopal  
 4. Surat

Question ID : 26433089882  
Status : Answered  
Chosen Option : 4

**Q.10 Which of the following dancer won a Sangeet Natak Akademi Award in 2004?**

- Ans  1. Krishna Ella  
 2. Anuradha Pandey  
 3. Jatin Goswami  
 4. Amala Akkineni

Question ID : 264330115826  
Status : Answered  
Chosen Option : 3

**Q.11 The Sattriya dance, one of the classical dances of India depicts the teachings of which of the following religions?**

- Ans  1. Hinduism  
 2. Sikhism  
 3. Jainism  
 4. Buddhism

Question ID : 26433071484  
Status : Answered  
Chosen Option : 4

**Q.12 Karaga, one of the oldest festivals of \_\_\_\_\_, is celebrated in honour of Goddess Shakti.**

- Ans  1. Karnataka  
 2. Andhra Pradesh  
 3. Kerala  
 4. Tamil Nadu

Question ID : 264330115128  
Status : Answered  
Chosen Option : 1

**Q.13 What obstructs the South-West monsoon winds which come from the Arabian Sea while flowing towards the Intertropical Convergence Zone?**

- Ans  1. Great Himalayan range  
 2. Western Ghats  
 3. Aravalli Range  
 4. Eastern Ghats

Question ID : 264330115987  
Status : Answered  
Chosen Option : 2

Q.14 Which is the largest Democracy in the world?

Ans  1. India

2. USA

3. Brazil

4. China

Question ID : 264330115620  
Status : Answered  
Chosen Option : 1

Q.15 The Satavahana kingdom was established about how many years ago?

Ans  1. 2400

2. 2100

3. 1700

4. 2800

Question ID : 264330115465  
Status : Answered  
Chosen Option : 3

Q.16 The 35th National Games of India were held in which year?

Ans  1. 2014

2. 2015

3. 2017

4. 2013

Question ID : 264330116254  
Status : Answered  
Chosen Option : 3

Q.17 Saikhom Mirabai Chanu is an \_\_\_\_\_.

Ans  1. Indian Boxer

2. Indian weightlifter

3. Indian Wrestler

4. Indian cyclist

Question ID : 264330115956  
Status : Answered  
Chosen Option : 2

Q.18 Chemical formula for the marble is \_\_\_\_\_.

Ans  1. CaO

2. Ca(OH)<sub>2</sub>

3. CaCO<sub>3</sub>

4. CO<sub>2</sub>

Question ID : 26433066471  
Status : Answered  
Chosen Option : 3

Q.19 \_\_\_\_\_ is the fluid content inside the plasma membrane.

- Ans
- 1. mitochondria
  - 2. nucleus
  - 3. chromatin
  - 4. cytoplasm

Question ID : 264330115209  
Status : Answered  
Chosen Option : 4

Q.20 \_\_\_\_\_ intends to provide skill development and placement oriented training across the entire textile value chain, excluding Spinning and Weaving in the organized sector.

- Ans
- 1. Merchandise Export From India Scheme
  - 2. Sewa Scheme
  - 3. MPLADS (Members of Parliament Local Area Development Scheme)
  - 4. Samarth Scheme

Question ID : 264330116172  
Status : Answered  
Chosen Option : 4

Section : Part-C-Elementary Mathematics

Q.1 In a certain rectangle, the ratio of length to width of the rectangle is 3 : 2 and the area is  $150 \text{ cm}^2$ . The perimeter of the rectangle is:

- Ans
- 1. 25 cm
  - 2. 50 cm
  - 3. 100 cm
  - 4. 30 cm

Question ID : 26433075881  
Status : Answered  
Chosen Option : 2

Q.2 Mukesh took some loan from a bank at the rate of 5% per annum compounded annually. If he cleared his loan by paying ₹7,05,600 at the end of 2 years, then what was the amount of loan that he had taken?

- Ans
- 1. ₹5,96,000
  - 2. ₹6,40,000
  - 3. ₹6,68,000
  - 4. ₹5,60,000

Question ID : 26433080045  
Status : Answered  
Chosen Option : 2



Q.3 A motor-cycle covers 50 km with a speed of 25 km/hr. What must be the speed of the motor-cycle for the next 50 km journey so that the average speed of the whole journey is 30 km/hr?

Ans

1.  $25 \frac{1}{2}$  km/hr

2.  $35 \frac{1}{2}$  km/hr

3.  $37 \frac{1}{2}$  km/hr

4.  $38 \frac{1}{2}$  km/hr

Question ID : 26433081593

Status : Answered

Chosen Option : 1

Q.4 If A is the average of first 5 natural numbers and B is the average of first 5 natural numbers which are perfect squares, then what is the average of A and B?

Ans

1. 8

2. 10

3. 7

4. 9

Question ID : 264330116692

Status : Answered

Chosen Option : 2

Q.5 A sum of money is lent out at compound interest rate of 20% per annum, compounding annually for two years. It would fetch ₹3,133 more interest, if interest is compounding half yearly. Find the sum.

Ans

1. ₹1,20,000

2. ₹13,000

3. ₹1,30,000

4. ₹65,000

Question ID : 26433076194

Status : Answered

Chosen Option : 4

Q.6 20 men can finish a piece of work in 5 days, whereas it takes 24 women to finish it in 5 days. If 30 men and 12 women undertake to complete the work, how many days will they take to complete it?

- Ans
- 1. 3
  - 2. 1.5
  - 3. 5
  - 4. 2.5

Question ID : 26433076207  
Status : Answered  
Chosen Option : 4

Q.7 The diameter and height of a cylindrical tower are 10 m and 21m, respectively. What will be the cost of painting its curved surface, at the rate of Rs.8 per  $m^2$ ? (Use  $\pi = 22/7$ )

- Ans
- 1. Rs.4,980
  - 2. Rs.5,280
  - 3. Rs.5,490
  - 4. Rs.5,130

Question ID : 26433075484  
Status : Answered  
Chosen Option : 2

Q.8 The Rajdhani train travels in a straight line at a constant speed of 75 km/h for a particular distance 'd' and then travels another distance equal to '2d' at a constant speed of 100 km/h in the same direction as earlier. Find the average speed of the train during the whole journey?

- Ans
- 1. 84 km/h
  - 2. 90 km/h
  - 3. 96 km/h
  - 4. 88 km/h

Question ID : 26433076233  
Status : Answered  
Chosen Option : 2

Q.9 In a school, the ratio of boys to girls is 7 : 11. If there are 3420 students in the school, then how many girls are there in the school? (There are only boys and girls in the school.)

- Ans
- 1. 1330
  - 2. 2090
  - 3. 902
  - 4. 760

Question ID : 26433082719  
Status : Answered  
Chosen Option : 2

Q.10 If the radius of the base and the height of a cylinder are 11cm and 21 cm respectively, then what is the volume of the cylinder? (Use  $\pi = 22/7$ )

- Ans
- 1. 8988 cm<sup>3</sup>
  - 2. 7988 cm<sup>3</sup>
  - 3. 8986 cm<sup>3</sup>
  - 4. 7986 cm<sup>3</sup>

Question ID : 26433075709  
Status : Answered  
Chosen Option : 2

Q.11 Applied to a bill for Rs. 10000 the difference between a discount of 30 percent and two successive discounts of 22 percent and 8 percent is:

- Ans
- 1. Rs. 138
  - 2. Rs. 144
  - 3. Rs. 176
  - 4. Rs. 124

Question ID : 264330116741  
Status : Answered  
Chosen Option : 2

Q.12 The ratio of the salaries of A and B is 4 : 5 and the ratio of their expenditures is 5 : 6. If both save ₹200 and ₹300, respectively, then what is the salary of A?

- Ans
- 1. ₹1,100
  - 2. ₹1,000
  - 3. ₹1,200
  - 4. ₹1,300

Question ID : 26433080217  
Status : Answered  
Chosen Option : 3

Q.13 The greatest number, by which when the numbers 1658 and 2038 are divided, the remainders are 7 and 6, respectively, is:

- Ans
- 1. 112
  - 2. 127
  - 3. 117
  - 4. 137

Question ID : 26433087336  
Status : Answered  
Chosen Option : 1

Q.14 A trader mixes 26 kg of raw salt which costs Rs.2 per kg with 30 kg of raw salt which costs Rs.3.60 per kg. If he sells the mixture for Rs.3 per kg, find his gain%.

- Ans
- 1. 8%
  - 2. 3%
  - 3. 10%
  - 4. 5%

Question ID : 26433075494  
Status : Answered  
Chosen Option : 1

Q.15 A, B, and C can complete a work in 4 days, 8 days, and 16 days respectively. If all three work on alternate days such that A works on first day, B works on second day, C works on third day and A works on fourth day and so on, then find the number of days in which 175% of the work is done.

- Ans
- 1. 12 days
  - 2. 5 days
  - 3. 9 days
  - 4. 11 days

Question ID : 264330116856  
Status : Answered  
Chosen Option : 3

Q.16 Two successive price increases of 5% and 5% of an article are equivalent to a single price increase of:

- Ans
- 1. 10.25%
  - 2. 10.50%
  - 3. 10.00%
  - 4. 9.75%

Question ID : 26433075100  
Status : Answered  
Chosen Option : 2

Q.17 In which ratio a trader must mix two quantities of ₹18 per kg and ₹27 per kg, so that the price of the mixture becomes ₹25 per kg?

- Ans
- 1. 1 : 7
  - 2. 3 : 7
  - 3. 2 : 7
  - 4. 2 : 5

Question ID : 26433079845  
Status : Answered  
Chosen Option : 3

Q.18 A man purchased 25 litres of milk at the cost price of Rs.25 per litre. Now he added 5 litres of water to it and sold the mixture at the cost price. Find the profit percentage for the man.

- Ans
- 1. 10%
  - 2. 20%
  - 3. 25%
  - 4. 15%

Question ID : 26433075941  
Status : Answered  
Chosen Option : 2

Q.19 A discount of 20% on one article is the same as a discount of 25% on another article. The marked price of article can be?

- Ans
- 1. ₹100 and ₹120
  - 2. ₹100 and ₹60
  - 3. ₹100 and ₹80
  - 4. ₹100 and ₹40

Question ID : 26433073010  
Status : Answered  
Chosen Option : 1

Q.20 Which number is one less than the sum of all the prime factors of 2310?

- Ans
- 1. 33
  - 2. 29
  - 3. 27
  - 4. 25

Question ID : 26433080374  
Status : Answered  
Chosen Option : 2

Section : Part-D-English

Q.1 Select the most appropriate option that can substitute the underlined segment in the given sentence. If there is no need to substitute it, select 'No substitution required'.

Nalini was not satisfy with her birthday dress, but she wore it anyway.

- Ans
- 1. Nalini was not satisfied for her birthday dress
  - 2. No substitution required
  - 3. Nalini was not satisfied with her birthday dress
  - 4. Nalini were not satisfied by her birthday dress

Question ID : 26433091873  
Status : Answered  
Chosen Option : 3

Q.2 Select the most appropriate ANTONYM of the given word.

Abolish

- Ans  1. Construct  
 2. Reverberate  
 3. Eradicate  
 4. Pontificate

Question ID : 26433071849  
Status : Answered  
Chosen Option : 2

Q.3 Select the most appropriate option to substitute the underlined segment in the given sentence.

Experiences lead you towards the most fascinating stage of your living that you will cherish forever.

- Ans  1. feature of your work  
 2. set of your routine  
 3. part of your life  
 4. glory of your day

Question ID : 26433092913  
Status : Answered  
Chosen Option : 3

Q.4 Parts of the following sentence have been given as options. Select the option that contains an error.

Sam shall went to / the office tomorrow to / get back his original documents / lying with the staff.

- Ans  1. get back his original documents  
 2. Sam shall went to  
 3. the office tomorrow to  
 4. lying with the staff

Question ID : 26433088464  
Status : Answered  
Chosen Option : 2

Q.5 Select the most appropriate meaning of the given idiom.

White elephant

- Ans  1. A business company in bankruptcy  
 2. Something that costs a lot of money but has no useful purpose  
 3. Something very rare and precious  
 4. A big lie that is concealed from all

Question ID : 26433072361  
Status : Answered  
Chosen Option : 3

Q.6 Select the most appropriate synonym of the given word to fill in the blank in the sentence.

Deceive

My mother said, "Don't \_\_\_\_\_ yourself, Adi. Pay attention to your studies."

- Ans
- 1. shine
  - 2. handle
  - 3. trick
  - 4. believe

Question ID : 26433060558  
Status : Answered  
Chosen Option : 3

Q.7 Select the most appropriate ANTONYM of the given word.

Worthless

- Ans
- 1. Insult
  - 2. Productive
  - 3. Kind
  - 4. Ineffective

Question ID : 26433090789  
Status : Answered  
Chosen Option : 2

Q.8 Select the most appropriate option that can substitute the underlined segment in the given sentence.

The captain feels very proudly as his team has won the match.

- Ans
- 1. feel very proudly
  - 2. feels most pride
  - 3. feels much proud
  - 4. feels very proud

Question ID : 26433088166  
Status : Answered  
Chosen Option : 4

Q.9 Select the most appropriate homophone to fill in the blank.

There was a big hole in the wall which they are trying to close. It took a \_\_\_\_\_ day for them to do the job.

- Ans
- 1. while
  - 2. whale
  - 3. hold
  - 4. whole

Question ID : 26433088792  
Status : Answered  
Chosen Option : 4

Q.10 Select the most appropriate synonym of the underlined word in the given sentence.

The novelist depicted the moral decay of the society through his novels.

- Ans
- 1. Conviction
  - 2. Degeneration
  - 3. Integrity
  - 4. Indignation

Question ID : 26433071959  
Status : Answered  
Chosen Option : 2

Q.11 Select the most appropriate synonym of the given word.

Culpable

- Ans
- 1. Absolved
  - 2. Vindicated
  - 3. Guilty
  - 4. Acquitted

Question ID : 26433088201  
Status : Answered  
Chosen Option : 3

Q.12 Select the most appropriate ANTONYM of the given word.

Mandatory

- Ans
- 1. Imperative
  - 2. Requisite
  - 3. Unavoidable
  - 4. Optional

Question ID : 26433073574  
Status : Answered  
Chosen Option : 4

Q.13 Identify the correctly spelt sentence.

- Ans
- 1. Scientists are looking for alternative energy to save non-renewable resources.
  - 2. Scientists are looking for alternative energy to save non-reneable resources.
  - 3. Scientists are looking for allternative energy to save non-renewable resources.
  - 4. Scientists are looking for alternative energy to save non-renewable resources.

Question ID : 26433072829  
Status : Answered  
Chosen Option : 1



**Q.14 Select the most appropriate meaning of the given idiom.**

**Like oil and water**

- Ans**
- 1. Two people who like each other
  - 2. Two people who are different from each other
  - 3. Two people who are similar to each other
  - 4. Two people who like to work with each other

Question ID : **26433072674**  
Status : **Answered**  
Chosen Option : **2**

**Q.15 Select the INCORRECTLY spelt word.**

- Ans**
- 1. Constipation
  - 2. Hallucination
  - 3. Reverberation
  - 4. Ockupation

Question ID : **26433073512**  
Status : **Answered**  
Chosen Option : **1**

**Comprehension:**

In the following passage, some words have been deleted. Read the passage carefully and select the most appropriate option to fill in each blank.

Amidst all the chaos and suffering caused by the pandemic, there are some positive stories of grit, (1)\_\_\_\_\_ and bravado. Some businesses understood the needs of the times to make (2)\_\_\_\_\_ profits. Businesses diversified and (3)\_\_\_\_\_ successful. Although there are numerous stories of people and business owners (4)\_\_\_\_\_ due to lockdowns, this small percentage of success stories is like the light at the end of the (5)\_\_\_\_\_.

**SubQuestion No : 16**

**Q.16 Select the most appropriate option to fill in blank number 1.**

- Ans**
- 1. persistence
  - 2. perspiration
  - 3. silence
  - 4. laxity

Question ID : **26433091782**  
Status : **Answered**  
Chosen Option : **1**

**Comprehension:**

In the following passage, some words have been deleted. Read the passage carefully and select the most appropriate option to fill in each blank.

Amidst all the chaos and suffering caused by the pandemic, there are some positive stories of grit, (1)\_\_\_\_\_ and bravado. Some businesses understood the needs of the times to make (2)\_\_\_\_\_ profits. Businesses diversified and (3)\_\_\_\_\_ successful. Although there are numerous stories of people and business owners (4)\_\_\_\_\_ due to lockdowns, this small percentage of success stories is like the light at the end of the (5)\_\_\_\_\_.

**SubQuestion No : 17**

**Q.17 Select the most appropriate option to fill in blank number 2.**

- Ans
- 1. elite
  - 2. slow
  - 3. tiny
  - 4. huge

Question ID : 26433091783

Status : Answered

Chosen Option : 4

**Comprehension:**

In the following passage, some words have been deleted. Read the passage carefully and select the most appropriate option to fill in each blank.

Amidst all the chaos and suffering caused by the pandemic, there are some positive stories of grit, (1)\_\_\_\_\_ and bravado. Some businesses understood the needs of the times to make (2)\_\_\_\_\_ profits. Businesses diversified and (3)\_\_\_\_\_ successful. Although there are numerous stories of people and business owners (4)\_\_\_\_\_ due to lockdowns, this small percentage of success stories is like the light at the end of the (5)\_\_\_\_\_.

**SubQuestion No : 18**

**Q.18 Select the most appropriate option to fill in blank number 3.**

- Ans
- 1. were
  - 2. are
  - 3. can
  - 4. aren't

Question ID : 26433091784

Status : Answered

Chosen Option : 1

**Comprehension:**

In the following passage, some words have been deleted. Read the passage carefully and select the most appropriate option to fill in each blank.

Amidst all the chaos and suffering caused by the pandemic, there are some positive stories of grit, (1)\_\_\_\_\_ and bravado. Some businesses understood the needs of the times to make (2)\_\_\_\_\_ profits. Businesses diversified and (3)\_\_\_\_\_ successful. Although there are numerous stories of people and business owners (4)\_\_\_\_\_ due to lockdowns, this small percentage of success stories is like the light at the end of the (5)\_\_\_\_\_.

**SubQuestion No : 19**

**Q.19** Select the most appropriate option to fill in blank number 4.

- Ans  1. relishing  
 2. pushing  
 3. emptying  
 4. suffering

Question ID : 26433091785

Status : Answered

Chosen Option : 4

**Comprehension:**

In the following passage, some words have been deleted. Read the passage carefully and select the most appropriate option to fill in each blank.

Amidst all the chaos and suffering caused by the pandemic, there are some positive stories of grit, (1)\_\_\_\_\_ and bravado. Some businesses understood the needs of the times to make (2)\_\_\_\_\_ profits. Businesses diversified and (3)\_\_\_\_\_ successful. Although there are numerous stories of people and business owners (4)\_\_\_\_\_ due to lockdowns, this small percentage of success stories is like the light at the end of the (5)\_\_\_\_\_.

**SubQuestion No : 20**

**Q.20** Select the most appropriate option to fill in blank number 5.

- Ans  1. kernel  
 2. hill  
 3. rope  
 4. tunnel

Question ID : 26433091786

Status : Answered

Chosen Option : 4

Section : Part-D-Hindi

**Q.1** निम्नलिखित वाक्य में त्रुटि पहचानें-  
उसने चार मन चावल खरीदी।

- Ans  1. उसने  
 2. चावल  
 3. चार  
 4. खरीदी

Question ID : 26433066820

Status : Not Answered

Chosen Option : --

Q.2 निम्नलिखित में से किस मुहावरे का अर्थ 'जी दुखाना' है?

- Ans
- 1. छाती पर सांप लोटना
  - 2. धज्जियां उड़ाना
  - 3. छक्के छुड़ाना
  - 4. छाती पर मूंग दलना

Question ID : 26433066810  
Status : Not Answered  
Chosen Option : --

Q.3 'जिस पर मुकदमा चल रहा हो' वाक्यांश के लिए उचित शब्द बताइए -

- Ans
- 1. मुक्किल
  - 2. अभियुक्त
  - 3. कैदी
  - 4. मुजरिम

Question ID : 26433065907  
Status : Not Answered  
Chosen Option : --

Q.4 धरती माता की पूजा करनी चाहिए।

उपरोक्त वाक्य में रेखांकित शब्द के उचित पर्यायवाची शब्द का चयन विकल्पों में से कीजिए।

- Ans
- 1. दारा
  - 2. तनया
  - 3. वसुधा
  - 4. धीया

Question ID : 26433079619  
Status : Not Answered  
Chosen Option : --

Q.5 निम्न वाक्य में रेखांकित शब्द के सही विलोम शब्द से रिक्त स्थान की पूर्ति कीजिए।  
'सज्जन मूढभाषी होते हैं लेकिन दुर्जन \_\_\_\_\_ होते हैं।'

- Ans
- 1. कटुभाषी
  - 2. मथुर
  - 3. स्निग्ध
  - 4. ललित

Question ID : 26433066908  
Status : Not Answered  
Chosen Option : --

Q.6 निम्नलिखित में से कौन-सा शब्द संबंध कारक चिह्न नहीं है?

- Ans  1. की  
 2. का  
 3. हे  
 4. के

Question ID : 26433085030  
Status : Not Answered  
Chosen Option : --

Q.7 निम्न वाक्य में रेखांकित शब्द के लिए विकल्पों में से सर्वाधिक उपयुक्त शब्द कौन सा होगा?  
'मैं आज भारी दुखी हूँ।'

- Ans  1. गंभीर  
 2. सही  
 3. हल्का  
 4. बहुत

Question ID : 26433066714  
Status : Not Answered  
Chosen Option : --

Q.8 निम्नलिखित वाक्यांश के लिए उपयुक्त सार्थक शब्द क्या होगा?  
जो व्यर्थ की बातें करता हो

- Ans  1. कठोर  
 2. वक्ता  
 3. वाचाल  
 4. जड़

Question ID : 26433065755  
Status : Not Answered  
Chosen Option : --

Q.9 विकल्पों में दिए गए किस वाक्य में निम्न शब्द के सही पर्यायवाची का प्रयोग किया गया है?  
मछली

- Ans  1. सर्पगंधा पानी में रहती है।  
 2. मत्स्य जल में रहती है।  
 3. हस्ति जल में रहती है।  
 4. इग्लू पानी में ही रहती है।

Question ID : 26433066936  
Status : Not Answered  
Chosen Option : --

Q.10 'यशोदा' व्यक्तिवाचक संज्ञा शब्द है। इसे जातिवाचक संज्ञा के रूप में प्रयोग करने से कौन सा विकल्प शुद्ध होगा?

- Ans
- 1. यशोदा की तस्वीर मैंने देखी है।
  - 2. वह यशोदा है।
  - 3. कृष्ण की माँ यशोदा थीं।
  - 4. यशोदा हमारे घर की लक्ष्मी है।

Question ID : 26433079224  
Status : Not Answered  
Chosen Option : --

Q.11 दिए गए मुहावरे में रेखांकित अंश के स्थान पर सबसे उपयुक्त विकल्प कौन-सा होगा?  
'आकाश से गिरा, जमीन पर अटका'

- Ans
- 1. नारियल
  - 2. खजूर
  - 3. अमरूद
  - 4. आम

Question ID : 26433066739  
Status : Not Answered  
Chosen Option : --

Q.12 निम्न वाक्य में रेखांकित शब्द-समूह के लिए सर्वाधिक उपयुक्त विकल्प चुनें।  
जिसके पास कुछ भी न हो, वह क्या खोएगा।

- Ans
- 1. अभावग्रस्त
  - 2. बेसहारा
  - 3. अपाहिज
  - 4. अकिंचन

Question ID : 26433062280  
Status : Not Answered  
Chosen Option : --

Q.13 "शायद विद्युत आज घर आ जाए।"  
सामान्य भविष्य काल का प्रयोग करते हुए उपरोक्त वाक्य को पुनः लिखिए।

- Ans
- 1. विद्युत घर आया था।
  - 2. विद्युत आज घर आ रहा होगा।
  - 3. विद्युत आज घर आएगा।
  - 4. विद्युत आज घर आया।

Question ID : 26433066983  
Status : Not Answered  
Chosen Option : --

Q.14 निम्नलिखित वाक्यों में अशुद्ध वर्तनी वाले वाक्य का चयन कीजिए।

- Ans
- 1. घर में बिस्तर और बर्तन आदि हैं।
  - 2. जो धन का भूखा है, वह साधु नहीं है।
  - 3. यद्यपि हम अपढ़ हैं तथापि बूद्धु नहीं है।
  - 4. राम कसरत करता है ताकि वह पहलवान बन जाए।

Question ID : 26433063070

Status : Not Answered

Chosen Option : --

Q.15 निम्न वाक्य में रेखांकित शब्द के विलोम से दिए गए वाक्य का रिक्त स्थान पूर्ण करें।  
परिश्रमी व्यक्ति सदैव अपना लक्ष्य प्राप्त करते हैं और \_\_\_\_\_ व्यर्थ में समय नष्ट करते हैं।

- Ans
- 1. आलसी
  - 2. साहसी
  - 3. वीर
  - 4. दुष्ट

Question ID : 26433085006

Status : Not Answered

Chosen Option : --

#### Comprehension:

प्रश्न संख्या 1 से 5 तक के प्रश्नों का उत्तर दिए गए गद्यांश के आधार पर दिजिए।  
तानाशाह जनमानस के 1. \_\_\_\_\_ को कोई महत्त्व नहीं देता। उसका निर्माण ऊपर से चलता है, किंतु यह लादा हुआ भार-स्वरूप निर्माण हो जाता है। सच्चा राष्ट्र-निर्माण वह है, जो जनमानस की तैयारी पर आधारित रहता है। योजनाएँ शासन और सत्ता बनाएँ, उन्हें कार्यरूप में परिणत भी करें; किंतु साथ ही उन्हें चिर-स्थायी बनाए रखने एवं पूर्णतया उद्देश्य-पूर्ति के लिए यह आवश्यक है कि जनमानस उन योजनाओं के लिए तैयार हो। स्पष्ट शब्दों में हम कह सकते हैं कि सत्ता राष्ट्र-निर्माण रूपी 2. \_\_\_\_\_ के लिए हल चलाने वाले किसान का कार्य तो कर सकती है, किंतु उसकी भूमि जनमानस को ही बनानी पड़ेगी। अन्यथा फसल या तो हवाई होगी या फिर गमलों की फसल होगी। इस फसल को किस-किस बुभुक्षित के सामने रखेगी शासन-सत्ता? यह प्रश्न 3. \_\_\_\_\_ में चक्कर ही काटा करता है। यह जनमानस किस प्रकार तैयार होता है? इस प्रश्न का उत्तर आपको समाचार-पत्र देगा। निर्माण-काल में यदि समाचार-पत्र सत्समालोचना से उतरकर ध्वंसात्मक हो गया तो निश्चित रूप से वह 4. \_\_\_\_\_ हो जाता है, किंतु सत्समालोचना निर्माण के लिए उतनी ही आवश्यक है, जितना निर्माण का समर्थन। जनमानस को तैयार करने के लिए समाचार-पत्र किस नीति को अपनाएँ? यह प्रश्न अपने में एक विवाद लिए हुए है; क्योंकि भिन्न-भिन्न समाचार-पत्र भिन्न-भिन्न नीतियों को उद्देश्य बनाकर 5. \_\_\_\_\_ होते हैं।

#### SubQuestion No : 16

Q.16 विकल्पों में से उपयुक्त शब्द के चयन द्वारा गद्यांश के रिक्त स्थान 1 की पूर्ति करें।

- Ans
- 1. आचरण
  - 2. सुषुप्ता
  - 3. जागरण
  - 4. स्वरूप

Question ID : 26433080845

Status : Not Answered

Chosen Option : --

**Comprehension:**

प्रश्न संख्या 1 से 5 तक के प्रश्नों का उत्तर दिए गए गद्यांश के आधार पर दिजिए।  
तानाशाह जनमानस के 1. \_\_\_\_\_ को कोई महत्त्व नहीं देता। उसका निर्माण ऊपर से चलता है, किंतु यह लादा हुआ भार-स्वरूप निर्माण हो जाता है। सच्चा राष्ट्र-निर्माण वह है, जो जनमानस की तैयारी पर आधारित रहता है। योजनाएँ शासन और सत्ता बनाएँ, उन्हें कार्यरूप में परिणत भी करें; किंतु साथ ही उन्हें चिर-स्थायी बनाए रखने एवं पूर्णतया उद्देश्य-पूर्ति के लिए यह आवश्यक है कि जनमानस उन योजनाओं के लिए तैयार हो। स्पष्ट शब्दों में हम कह सकते हैं कि सत्ता राष्ट्र-निर्माण रूपी 2. \_\_\_\_\_ के लिए हल चलाने वाले किसान का कार्य तो कर सकती है, किंतु उसकी भूमि जनमानस को ही बनानी पड़ेगी। अन्यथा फसल या तो हवाई होगी या फिर गमलों की फसल होगी। इस फसल को किस-किस बुभुक्षित के सामने रखेगी शासन-सत्ता? यह प्रश्न 3. \_\_\_\_\_ में चक्कर ही काटा करता है। यह जनमानस किस प्रकार तैयार होता है? इस प्रश्न का उत्तर आपको समाचार-पत्र देगा। निर्माण-काल में यदि समाचार-पत्र सत्समालोचना से उतरकर ध्वंसात्मक हो गया तो निश्चित रूप से वह 4. \_\_\_\_\_ हो जाता है, किंतु सत्समालोचना निर्माण के लिए उतनी ही आवश्यक है, जितना निर्माण का समर्थन। जनमानस को तैयार करने के लिए समाचार-पत्र किस नीति को अपनाएँ? यह प्रश्न अपने में एक विवाद लिए हुए है; क्योंकि भिन्न-भिन्न समाचार-पत्र भिन्न-भिन्न नीतियों को उद्देश्य बनाकर 5. \_\_\_\_\_ होते हैं।

**SubQuestion No : 17**

Q.17 विकल्पों में से उपयुक्त शब्द के चयन द्वारा गद्यांश के रिक्त स्थान 2 की पूर्ति करें।

- Ans  1. जंगल  
 2. परियोजना  
 3. फसल  
 4. मशीन

Question ID : 26433080846

Status : Not Answered

Chosen Option : --

**Comprehension:**

प्रश्न संख्या 1 से 5 तक के प्रश्नों का उत्तर दिए गए गद्यांश के आधार पर दिजिए।  
तानाशाह जनमानस के 1. \_\_\_\_\_ को कोई महत्त्व नहीं देता। उसका निर्माण ऊपर से चलता है, किंतु यह लादा हुआ भार-स्वरूप निर्माण हो जाता है। सच्चा राष्ट्र-निर्माण वह है, जो जनमानस की तैयारी पर आधारित रहता है। योजनाएँ शासन और सत्ता बनाएँ, उन्हें कार्यरूप में परिणत भी करें; किंतु साथ ही उन्हें चिर-स्थायी बनाए रखने एवं पूर्णतया उद्देश्य-पूर्ति के लिए यह आवश्यक है कि जनमानस उन योजनाओं के लिए तैयार हो। स्पष्ट शब्दों में हम कह सकते हैं कि सत्ता राष्ट्र-निर्माण रूपी 2. \_\_\_\_\_ के लिए हल चलाने वाले किसान का कार्य तो कर सकती है, किंतु उसकी भूमि जनमानस को ही बनानी पड़ेगी। अन्यथा फसल या तो हवाई होगी या फिर गमलों की फसल होगी। इस फसल को किस-किस बुभुक्षित के सामने रखेगी शासन-सत्ता? यह प्रश्न 3. \_\_\_\_\_ में चक्कर ही काटा करता है। यह जनमानस किस प्रकार तैयार होता है? इस प्रश्न का उत्तर आपको समाचार-पत्र देगा। निर्माण-काल में यदि समाचार-पत्र सत्समालोचना से उतरकर ध्वंसात्मक हो गया तो निश्चित रूप से वह 4. \_\_\_\_\_ हो जाता है, किंतु सत्समालोचना निर्माण के लिए उतनी ही आवश्यक है, जितना निर्माण का समर्थन। जनमानस को तैयार करने के लिए समाचार-पत्र किस नीति को अपनाएँ? यह प्रश्न अपने में एक विवाद लिए हुए है; क्योंकि भिन्न-भिन्न समाचार-पत्र भिन्न-भिन्न नीतियों को उद्देश्य बनाकर 5. \_\_\_\_\_ होते हैं।

**SubQuestion No : 18**

Q.18 विकल्पों में से उपयुक्त शब्द के चयन द्वारा गद्यांश के रिक्त स्थान 3 की पूर्ति करें।

- Ans  1. हृदय  
 2. मस्तिष्क  
 3. कलेजे  
 4. चित्त

Question ID : 26433080847

Status : Not Answered

Chosen Option : --



**Comprehension:**

प्रश्न संख्या 1 से 5 तक के प्रश्नों का उत्तर दिए गए गद्यांश के आधार पर दिजिए।  
तानाशाह जनमानस के 1. \_\_\_\_\_ को कोई महत्त्व नहीं देता। उसका निर्माण ऊपर से चलता है, किंतु यह लादा हुआ भार-स्वरूप निर्माण हो जाता है। सच्चा राष्ट्र-निर्माण वह है, जो जनमानस की तैयारी पर आधारित रहता है। योजनाएँ शासन और सत्ता बनाएँ, उन्हें कार्यरूप में परिणत भी करें; किंतु साथ ही उन्हें चिर-स्थायी बनाए रखने एवं पूर्णतया उद्देश्य-पूर्ति के लिए यह आवश्यक है कि जनमानस उन योजनाओं के लिए तैयार हो। स्पष्ट शब्दों में हम कह सकते हैं कि सत्ता राष्ट्र-निर्माण रूपी 2. \_\_\_\_\_ के लिए हल चलाने वाले किसान का कार्य तो कर सकती है, किंतु उसकी भूमि जनमानस को ही बनानी पड़ेगी। अन्यथा फसल या तो हवाई होगी या फिर गमलों की फसल होगी। इस फसल को किस-किस बुभुक्षित के सामने रखेगी शासन-सत्ता? यह प्रश्न 3. \_\_\_\_\_ में चक्कर ही काटा करता है। यह जनमानस किस प्रकार तैयार होता है? इस प्रश्न का उत्तर आपको समाचार-पत्र देगा। निर्माण-काल में यदि समाचार-पत्र सत्समालोचना से उतरकर ध्वंसात्मक हो गया तो निश्चित रूप से वह 4. \_\_\_\_\_ हो जाता है, किंतु सत्समालोचना निर्माण के लिए उतनी ही आवश्यक है, जितना निर्माण का समर्थन। जनमानस को तैयार करने के लिए समाचार-पत्र किस नीति को अपनाएँ? यह प्रश्न अपने में एक विवाद लिए हुए है; क्योंकि भिन्न-भिन्न समाचार-पत्र भिन्न-भिन्न नीतियों को उद्देश्य बनाकर 5. \_\_\_\_\_ होते हैं।

**SubQuestion No : 19**

Q.19 विकल्पों में से उपयुक्त शब्द के चयन द्वारा गद्यांश के रिक्त स्थान 4 की पूर्ति करें।

- Ans  1. कर्मनिष्ठ  
 2. सफल  
 3. कर्तव्यच्युत  
 4. कर्मठ

Question ID : 26433080848

Status : Not Answered

Chosen Option : --

**Comprehension:**

प्रश्न संख्या 1 से 5 तक के प्रश्नों का उत्तर दिए गए गद्यांश के आधार पर दिजिए।  
तानाशाह जनमानस के 1. \_\_\_\_\_ को कोई महत्त्व नहीं देता। उसका निर्माण ऊपर से चलता है, किंतु यह लादा हुआ भार-स्वरूप निर्माण हो जाता है। सच्चा राष्ट्र-निर्माण वह है, जो जनमानस की तैयारी पर आधारित रहता है। योजनाएँ शासन और सत्ता बनाएँ, उन्हें कार्यरूप में परिणत भी करें; किंतु साथ ही उन्हें चिर-स्थायी बनाए रखने एवं पूर्णतया उद्देश्य-पूर्ति के लिए यह आवश्यक है कि जनमानस उन योजनाओं के लिए तैयार हो। स्पष्ट शब्दों में हम कह सकते हैं कि सत्ता राष्ट्र-निर्माण रूपी 2. \_\_\_\_\_ के लिए हल चलाने वाले किसान का कार्य तो कर सकती है, किंतु उसकी भूमि जनमानस को ही बनानी पड़ेगी। अन्यथा फसल या तो हवाई होगी या फिर गमलों की फसल होगी। इस फसल को किस-किस बुभुक्षित के सामने रखेगी शासन-सत्ता? यह प्रश्न 3. \_\_\_\_\_ में चक्कर ही काटा करता है। यह जनमानस किस प्रकार तैयार होता है? इस प्रश्न का उत्तर आपको समाचार-पत्र देगा। निर्माण-काल में यदि समाचार-पत्र सत्समालोचना से उतरकर ध्वंसात्मक हो गया तो निश्चित रूप से वह 4. \_\_\_\_\_ हो जाता है, किंतु सत्समालोचना निर्माण के लिए उतनी ही आवश्यक है, जितना निर्माण का समर्थन। जनमानस को तैयार करने के लिए समाचार-पत्र किस नीति को अपनाएँ? यह प्रश्न अपने में एक विवाद लिए हुए है; क्योंकि भिन्न-भिन्न समाचार-पत्र भिन्न-भिन्न नीतियों को उद्देश्य बनाकर 5. \_\_\_\_\_ होते हैं।

**SubQuestion No : 20**

Q.20 विकल्पों में से उपयुक्त शब्द के चयन द्वारा गद्यांश के रिक्त स्थान 5 की पूर्ति करें।

- Ans  1. रचित  
 2. प्रकाशित  
 3. मुद्रित  
 4. प्रचारित

Question ID : 26433080849

Status : Not Answered

Chosen Option : --

# Constable GD in CAPFs SSF Rifleman GD in Assam Rifles and Sepoy in NCB Examination 2022

Roll Number	<b>KD Job Updates</b>
Candidate Name	<b>KD Job Updates</b>
Venue Name	iON Digital Zone iDZ Kuanwala
Exam Date	07/02/2023
Exam Time	9:00 AM - 10:00 AM
Subject	Constable GD Examination 2022

Section : **Part-A-General Intelligence and Reasoning**

**Q.1** In a code language, 'sweet fruits' is coded as 're de', 'mango is sweet' is coded as 'de me ke', 'orange is citrus' is coded as 'ke le pe', 'eat orange' is coded as 'pe ne'. What is the code for the word 'mango'?

- Ans
- 1. pe
  - 2. ke
  - 3. de
  - 4. me

Question ID : **26433082269**

Status : **Answered**

Chosen Option : **4**

**Q.2** Select the option that is related to the third number in the same way as the second number is related to the first number and the sixth number is related to the fifth number.

42 : 91 :: 84 : ? :: 149 : 198

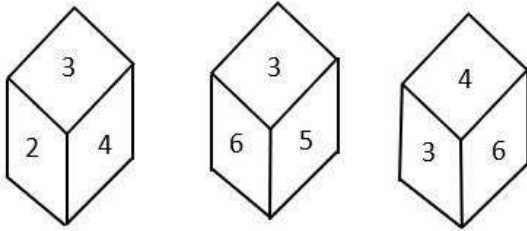
- Ans
- 1. 133
  - 2. 142
  - 3. 128
  - 4. 131

Question ID : **26433069189**

Status : **Not Attempted and Marked For Review**

Chosen Option : **--**

Q.3 Three different positions of the same dice are shown. Find the number on the face opposite the face showing '3'.



- Ans
- 1. 2
  - 2. 4
  - 3. 1
  - 4. 5

Question ID : 26433090080

Status : Answered

Chosen Option : 3

Q.4 Seven people, P, Q, R, S, T, U and V are sitting in a straight row, facing north. Only four people sit to the right of P. Only two people sit between P and S. Q is sitting third to the right of V. T is sitting second to the right of V. U is sitting third to the left of T. Who is sitting at the extreme right end of the row?

- Ans
- 1. R
  - 2. T
  - 3. P
  - 4. S

Question ID : 26433068279

Status : Not Attempted and Marked For Review

Chosen Option : --

Q.5 Which of the following letter-clusters will replace the question mark (?) in the given series?  
AVXE, DSUH, GPRK, ?, MJLQ

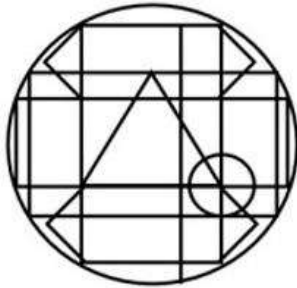
- Ans
- 1. KJON
  - 2. JMON
  - 3. JJPM
  - 4. KKON

Question ID : 26433076444

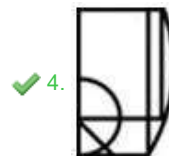
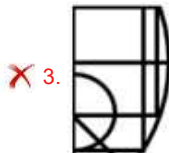
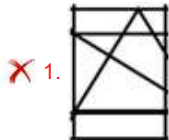
Status : Answered

Chosen Option : 2

Q.6 Select the option figure which is embedded in the given figure. (Rotation is NOT allowed).



Ans



Question ID : 26433076577

Status : Answered

Chosen Option : 4

Q.7 Select the number from among the given options that can replace the question mark (?) in the following series.  
14, 12, 27, 25, 53, 51, ?

Ans ✓ 1. 105

✗ 2. 150

✗ 3. 108

✗ 4. 180

Question ID : 26433078926

Status : Answered

Chosen Option : 1

**Q.8** Select the option that is related to the fifth term in the same way as the second term is related to the first term and fourth term is related to the third term.  
**PREPARE : ERAPERP :: COMPARE : ERAPMOC :: DESPAIR : ?**

- Ans**
- 1. RIAPSED
  - 2. RIASPED
  - 3. SPAIRDE
  - 4. ESPAIRD

Question ID : **26433067264**  
Status : **Answered**  
Chosen Option : **1**

**Q.9** In the equation given below, which 2 signs need to be interchanged so that it is balanced?

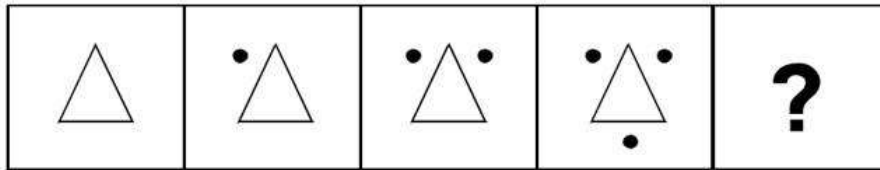
$$\frac{1}{4} \div \frac{1}{16} - 5 + 45 \times 25 = 40$$

- Ans**
- 1. ÷ and ×
  - 2. + and -
  - 3. × and -
  - 4. + and ×

Question ID : **26433085656**  
Status : **Answered**  
Chosen Option : **3**

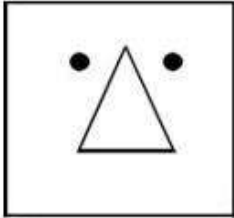
KD Job Updates

**Q.10** Select the figure from among the given options that can replace the question mark (?) in the following series.

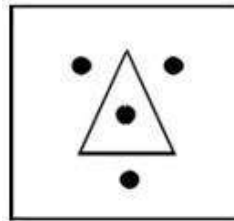


Ans

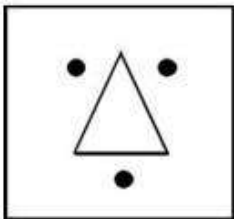
✗ 1.



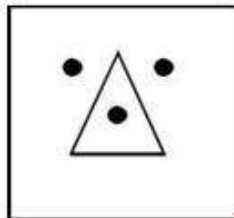
✓ 2.



✗ 3.



✗ 4.



Question ID : 26433080487  
 Status : Answered  
 Chosen Option : 2

**Q.11** Which two signs should be interchanged to make the below equation mathematically correct?

$$72 \times 3 + 48 \div 6 - 16 = 296$$

Ans ✗ 1.  $\times$  and  $+$

✓ 2.  $\times$  and  $\div$

✗ 3.  $+$  and  $-$

✗ 4.  $\div$  and  $-$

Question ID : 264330117540  
 Status : Answered  
 Chosen Option : 2

**Q.12** Three statements are given followed by three conclusions numbered I, II and III. Assuming the statements to be true, even if they seem to be at variance with commonly known facts, decide which of the conclusions logically follow(s) from the statements.

**Statements:**

All masks are sanitizers.

All handwashes are sanitizers.

All sanitizers are medicines.

**Conclusions:**

I. All handwashes are medicines.

II. All medicines are masks.

III. Some medicines are handwashes.

- Ans**
- 1. All conclusions follow
  - 2. Only conclusions II and III follow
  - 3. Only conclusions I and II follow
  - 4. Only conclusions I and III follow

Question ID : 26433082316

Status : Answered

Chosen Option : 4

**Q.13** Select the correct mirror image of the given figure when the mirror is placed at MN as shown below.

NoSTAlgiC



- Ans**
- 1. Nostalgic
  - 2. NoTAlgiC
  - 3. NoTAlCig
  - 4. NoTAlCig

Question ID : 26433085550

Status : Answered

Chosen Option : 3

**Q.14** Select the option that is related to the third word in the same way as the second word is related to the first word.  
(The words must be considered as meaningful English words and must not be related to each other based on the number of letters / number of consonants / vowels in the word)  
Spider : Web :: Horse : ?

- Ans
- 1. Caravan
  - 2. Palace
  - 3. Stable
  - 4. Den

Question ID : 26433082575  
Status : Answered  
Chosen Option : 3

**Q.15** Select the number from among the given options that can replace the question mark (?) in the following series.  
8, 10, 17, 19, 35, 37, ?

- Ans
- 1. 47
  - 2. 74
  - 3. 77
  - 4. 71

Question ID : 26433078918  
Status : Answered  
Chosen Option : 4

**Q.16** In a certain code language, 'TRIFLED' is written as 'YQNEQDI' and 'BRIEF' is written as 'GQNDK'. How will 'FALTER' be written in that language?

- Ans
- 1. KYPSJQ
  - 2. KYQTHP
  - 3. KZQSHR
  - 4. KZQSJQ

Question ID : 26433069465  
Status : Answered  
Chosen Option : 4

**Q.17** Which letter-cluster will replace the question mark (?) to complete the given series?  
NUZD, LSXB, ?, HOTX, FMRV

- Ans
- 1. JQVZ
  - 2. JRVZ
  - 3. JQVA
  - 4. JQWZ

Question ID : 26433067951  
Status : Answered  
Chosen Option : 1



Q.18 D \$ E means 'D is the daughter of E'  
D @ E means 'D is the mother of E'  
D + E means 'D is the father of E'  
D \* E means 'D is the husband of E'  
If P \* T \$ X + Z, then how is P related to Z?

- Ans  1. Paternal uncle  
 2. Sister's husband  
 3. Daughter  
 4. Sister

Question ID : 26433080430  
Status : Answered  
Chosen Option : 2

Q.19 Which option represents the correct order of the given words as they would appear in the English dictionary?  
1 domestic  
2 dozen  
3 double  
4 doctor  
5 down

- Ans  1. 4,3,1,5,2  
 2. 4,1,3,2,5  
 3. 4,1,3,5,2  
 4. 4,3,1,2,5

Question ID : 26433069310  
Status : Answered  
Chosen Option : 3

Q.20 Six friends (Aman, Biplab, Chirantan, Divya, Elizabeth and Firoz) are sitting around a circular table facing the centre. Aman sits third to the left of Biplab. Chirantan is an immediate neighbour of Aman. Elizabeth sits second to the right of Divya. Chirantan is not an immediate neighbour of Divya. Who sits to the immediate left of Biplab?

- Ans  1. Elizabeth  
 2. Firoz  
 3. Divya  
 4. Chirantan

Question ID : 26433092771  
Status : Answered  
Chosen Option : 3

Q.1 Which of the following former Chief Minister of Uttar Pradesh passed away in October 2022?

- Ans
- 1. Narayan Dutt Tiwari
  - 2. Kalyan Singh
  - 3. Mulayam Singh Yadav
  - 4. Vijay Kashyap

Question ID : 264330115030  
Status : Answered  
Chosen Option : 3

Q.2 Who among the following became the Member of legislative Assembly of Surma, Tripura in June 2022?

- Ans
- 1. Sudip Roy Barman
  - 2. Rajnath Singh
  - 3. Swapna Das Paul
  - 4. Sadhan Pande

Question ID : 264330114941  
Status : Not Answered  
Chosen Option : --

Q.3 Gopika Varma won the 2018 Sangeet Natak Akademi Award for \_\_\_\_\_.

- Ans
- 1. Mohiniattam
  - 2. Bharatanatyam
  - 3. Manipuri
  - 4. Odissi

Question ID : 264330115866  
Status : Not Attempted and Marked For Review  
Chosen Option : --

Q.4 Which of the following is a metamorphic rock?

- Ans
- 1. Granite
  - 2. Quartzite
  - 3. Sandstone
  - 4. Shale

Question ID : 26433089663  
Status : Answered  
Chosen Option : 1

**Q.5 Which among the following Bihu is also known as Rongali Bihu?**

- Ans
- 1. Magh Bihu
  - 2. Bhogali Bihu
  - 3. Bohag Bihu
  - 4. Kongali Bihu

Question ID : 264330115117  
Status : Answered  
Chosen Option : 1

**Q.6 The \_\_\_\_\_ provides for measures to deter fugitive economic offenders from evading the process of law in India by staying outside the jurisdiction of Indian courts.**

- Ans
- 1. Economic Offenders Act, 2018
  - 2. Fugitive Economic Offenders Act, 2018
  - 3. Fugitive Offenders Act, 2015
  - 4. Foreign Economic Offenders Act, 2018

Question ID : 264330116212  
Status : Not Attempted and Marked For Review  
Chosen Option : --

**Q.7 Sultan Johor Cup is associated with which sport?**

- Ans
- 1. Football
  - 2. Hockey
  - 3. Basketball
  - 4. Cricket

Question ID : 264330116280  
Status : Answered  
Chosen Option : 2

**Q.8 Which of the following is a fundamental duty?**

- Ans
- 1. To renounce practices derogatory to the dignity of men
  - 2. To renounce practices derogatory to the dignity of any administrative officials
  - 3. To renounce practices derogatory to the dignity of advocates
  - 4. To renounce practices derogatory to the dignity of women

Question ID : 26433089953  
Status : Answered  
Chosen Option : 4

**Q.9** Harshavardhana tried to cross the Narmada to march into the Deccan, but was stopped by a ruler belonging to the Chalukya dynasty, \_\_\_\_\_.

- Ans**
- 1. Pulakeshin II
  - 2. Chandragupta
  - 3. Samudragupta II
  - 4. Samudragupta I

Question ID : 264330115459  
Status : Answered  
Chosen Option : 1

**Q.10** Net Worth = Assets - \_\_\_\_\_

- Ans**
- 1. Book Debts
  - 2. Equity
  - 3. Current Assets
  - 4. Liabilities

Question ID : 264330115327  
Status : Answered  
Chosen Option : 4

**Q.11** Which of the given statements is correct?

- I. Acid turns red litmus blue.
- II. Acids are bitter in taste.

- Ans**
- 1. Neither I nor II
  - 2. Only II
  - 3. Only I
  - 4. Both I and II

Question ID : 264330115245  
Status : Answered  
Chosen Option : 3

**Q.12** The folk dance 'Cheraw' is primarily associated with which Indian state?

- Ans**
- 1. Bihar
  - 2. Odisha
  - 3. Goa
  - 4. Mizoram

Question ID : 26433072925  
Status : Answered  
Chosen Option : 4

Q.13 In which of the following years did the first elected Parliament come into existence?

- Ans  1. 1950  
 2. 1949  
 3. 1952  
 4. 1955

Question ID : 26433086844  
Status : Answered  
Chosen Option : 3

Q.14 Which are the two social groups in India which are most vulnerable to poverty?

- Ans  1. Forward castes and Brahmins  
 2. Scheduled tribes and Other Backward Classes  
 3. Brahmins and Scheduled castes  
 4. Scheduled tribes and Scheduled castes

Question ID : 264330116066  
Status : Answered  
Chosen Option : 4

Q.15 The \_\_\_\_\_ of a country is measured by the development of manufacturing industries.

- Ans  1. debt  
 2. expenditure  
 3. liability  
 4. economic strength

Question ID : 264330115405  
Status : Answered  
Chosen Option : 4

Q.16 अनबुझा चूना कैसे निर्मित होता है?

- Ans  1. कैल्शियम ऑक्साइड और जल के दोहरे अपघटन द्वारा  
 2. कैल्शियम ऑक्साइड और कैल्शियम कार्बोनेट के विस्थापन द्वारा  
 3. तापन पर कैल्शियम कार्बोनेट के कैल्शियम ऑक्साइड और कार्बन डाइऑक्साइड में अपघटन द्वारा  
 4. कैल्शियम कार्बोनेट और कैल्शियम हीक्साफ्लोराइड के अपघटन द्वारा

Question ID : 26433087846  
Status : Answered  
Chosen Option : 3

Q.17 Which currency notes were demonetised by the government of India in 2016?

- Ans  1. ₹500 and ₹50  
 2. ₹500 and ₹1,000  
 3. ₹500 and ₹100  
 4. ₹100 and ₹1,000

Question ID : 26433072953  
Status : Answered  
Chosen Option : 2

Q.18 Which of the following activity is related to the tertiary sector of the economy?

- Ans  1. Storage  
 2. Automobile production  
 3. Fishing  
 4. Cloth Weaving

Question ID : 264330115574  
Status : Answered  
Chosen Option : 2

Q.19 He is perhaps best known for his speech at the Parliament of the World's Religions in Chicago in 1893. Who is 'he' referred to?

- Ans  1. Swami Vivekananda  
 2. Keshab Chandra Sen  
 3. Swami Dayanand Saraswati  
 4. Mahatma Gandhi

Question ID : 264330115717  
Status : Answered  
Chosen Option : 1

Q.20 The inaugural winners of the Hero Indian Super League (ISL) was ATK, which is a football club based in \_\_\_\_\_.

- Ans  1. Kolkata  
 2. Chennai  
 3. Mumbai  
 4. Bengaluru

Question ID : 26433089928  
Status : Answered  
Chosen Option : 4

Q.1 A, B and C runs at speeds  $5 \frac{m}{s}$ ,  $3 \frac{m}{s}$  and  $8 \frac{m}{s}$ , respectively. They start the race at the same time from the same point. After some time, it was found that the distance between A and C is 6 m. Determine the distance between A and B.

- Ans
- 1. 3 m
  - 2. 2 m
  - 3. 5 m
  - 4. 4 m

Question ID : 26433071338

Status : **Not Attempted and Marked For Review**

Chosen Option : --

Q.2 A dishonest shopkeeper sells rice at the cost price but he uses a faulty weight of 925g for 1000g. Find his gain percentage.

- Ans
- 1. 6.01 Percent
  - 2. 7.0 Percent
  - 3. 5.3 Percent
  - 4. 8.11 Percent

Question ID : 26433074336

Status : **Answered**

Chosen Option : 4

Q.3 A single discount equivalent to three successive discounts of 10%, 5%, and  $3\frac{1}{2}\%$  will be \_\_\_\_\_.

- Ans
- 1. 18.5%
  - 2. 16.9475%
  - 3. 17.4925%
  - 4. 14.5%

Question ID : 26433080316

Status : **Answered**

Chosen Option : 3

Q.4 What is the smallest positive number that should be subtracted from each of 12 and 21 so that 36 is the third proportion to them?

- Ans
- 1. 5
  - 2. 3
  - 3. 4
  - 4. 2

Question ID : 26433080118

Status : **Answered**

Chosen Option : 2

Q.5 The value of a painting rises from Rs 140000 to Rs 182000. The percent increase in the value of the painting is:

- Ans
- 1. 50 percent
  - 2. 10 percent
  - 3. 30 percent
  - 4. 40 percent

Question ID : 264330116816  
Status : Answered  
Chosen Option : 3

Q.6 Find the HCF of the cube of 16 and the square of 48.

- Ans
- 1. 256
  - 2. 768
  - 3. 512
  - 4. 128

Question ID : 264330116658  
Status : Answered  
Chosen Option : 1

Q.7 24 men complete a work in 9 days. 3 days after they started working, 8 more men joined them. How many days will all of them take to complete the remaining work?

- Ans
- 1. 9
  - 2. 4
  - 3. 5.5
  - 4. 4.5

Question ID : 26433076211  
Status : Answered  
Chosen Option : 4

Q.8 If the price of tea is increased by 20%, by what percentage must the consumption of tea be diminished so as NOT to increase the expenditure on tea?

- Ans
- 1.  $33\frac{1}{3}\%$
  - 2.  $16\frac{2}{3}\%$
  - 3. 20%
  - 4. 25%

Question ID : 26433075138  
Status : Answered  
Chosen Option : 2



Q.9 A solid right-circular cylinder whose radius of the base is 22.5 cm and whose height is 24 cm is melted and moulded in the shape of a right circular cone whose radius of the base is 36 cm. What will be the height of this cone?

- Ans
- 1. 26.225 cm
  - 2. 28.125 cm
  - 3. 29.105 cm
  - 4. 30.25 cm

Question ID : 26433075301  
Status : Marked For Review  
Chosen Option : 1

Q.10 The present value of a house is ₹46,40,000. If its value depreciates at the rate of 5% per annum, then the value of the house after 3 years will be:

- Ans
- 1. ₹39,78,220
  - 2. ₹44,08,000
  - 3. ₹40,70,520
  - 4. ₹41,87,600

Question ID : 26433087384  
Status : Answered  
Chosen Option : 1

Q.11 A person travels three equal distances at the speeds of 2 km/h, 3 km/h and 4 km/h and takes a total time of 52 minutes. The total distance is:

- Ans
- 1. 2.8 km
  - 2. 2.7 km
  - 3. 2.4 km
  - 4. 2.5 km

Question ID : 26433076371  
Status : Answered  
Chosen Option : 3

Q.12 An object moves 15 m in 2.6 min and the next 26 km at a speed of 30 km/h. Find its average speed (in m/sec) for the whole movement.

- Ans
- 1. 8.59
  - 2. 3.76
  - 3. 7.94
  - 4. 2.92

Question ID : 26433080002  
Status : Not Attempted and Marked For Review  
Chosen Option : --

**Q.13 Simplify the following.**  
30% of [ { (820% of 40) – 28} ] % of 600

- Ans  1. 540  
 2. 200  
 3. 500  
 4. 250

Question ID : 26433075342  
Status : Answered  
Chosen Option : 1

**Q.14 At what rate of compound interest does a sum of money become 3.375-fold in 3 years, compounding annually?**

- Ans  1. 50%  
 2. 200%  
 3. 100%  
 4. 150%

Question ID : 26433065091  
Status : Answered  
Chosen Option : 1

**Q.15 A wholesaler has 1000 kg sugar, part of which he sells at 6% profit and the rest at 12% profit. His gain is 10% on the whole. The quantity sold at 6% profit is: (consider up to two decimals)**

- Ans  1. 666.66 kg  
 2. 336.33 kg  
 3. 663.66 kg  
 4. 333.33 kg

Question ID : 26433076269  
Status : Answered  
Chosen Option : 4

**Q.16 Balvendra offers two successive discounts of 9% and 4% first and then he also provides a cash discount of Rs.268 on the sale of a CCTV camera. If the marked price of the CCTV camera is Rs.5,000, what is the final price of the CCTV camera for a customer?**

- Ans  1. Rs.4,000  
 2. Rs.4,368  
 3. Rs.4,100  
 4. Rs.4,636

Question ID : 26433080319  
Status : Not Attempted and Marked For Review  
Chosen Option : --

Q.17 Ram and Ramesh run two kilometres and Ram wins by 40 seconds. Ram and Naresh run two kilometres and Ram wins by 650 metres. When Ramesh and Naresh run the same distance, Ramesh wins by 25 seconds. Find the time taken by Ram to run two kilometres.

- Ans
- 1. 3 minutes, 15 seconds
  - 2. 2 minutes, 15 seconds
  - 3. 3 minutes, 35 seconds
  - 4. 2 minutes, 35 seconds

Question ID : 26433065003

Status : Not Attempted and Marked For Review

Chosen Option : --

Q.18 If the volume of a solid right circular cone is  $v \text{ cm}^3$  and its height is  $h \text{ cm}$ , then the radius of the cone is:

- Ans
- 1.  $\frac{v}{\pi h^2} \text{ cm}$
  - 2.  $\sqrt{\frac{3v}{\pi h}} \text{ cm}$
  - 3.  $\frac{3v}{\pi h^2} \text{ cm}$
  - 4.  $\sqrt{\frac{v}{\pi h}} \text{ cm}$

Question ID : 26433079973

Status : Answered

Chosen Option : 2

Q.19 Aman can do a piece of work in 78 days. Ram can do this work in 39 days. Aman started the work alone. After how many days should Ram join him, so that the work is finished in 39 days?

- Ans
- 1.  $39/2$  days
  - 2.  $77/2$  days
  - 3.  $27/2$  days
  - 4.  $17/2$  days

Question ID : 264330116896

Status : Answered

Chosen Option : 1

**Q.20** ₹936 is divided among P, Q and R in the ratio 2 : 3 : 4 instead of  $\frac{1}{2} : \frac{1}{3} : \frac{1}{4}$  by mistake. The gain of R in the distribution is \_\_\_\_\_.

- Ans** ✓ 1. ₹200  
✗ 2. ₹24  
✗ 3. ₹124  
✗ 4. ₹216

Question ID : 26433073110  
Status : Answered  
Chosen Option : 1

Section : Part-D-English

**Q.1** Select the most appropriate option that can substitute the underlined segment in the given sentence.

The library is the right place to write an article from a journal.

- Ans** ✗ 1. to fill an article  
✗ 2. to correct an article  
✓ 3. to read an article  
✗ 4. to find the article

Question ID : 26433088986  
Status : Answered  
Chosen Option : 3

**Q.2** Select the most appropriate synonym of the given word.  
Swindle

- Ans** ✗ 1. Threat  
✓ 2. Fraud  
✗ 3. Observation  
✗ 4. Ride

Question ID : 26433086487  
Status : Answered  
Chosen Option : 4

**Q.3** Select the most appropriate meaning of the given idiom.

A cakewalk

- Ans** ✗ 1. An unexpected twist  
✗ 2. A stylish walk  
✓ 3. An easy task or victory  
✗ 4. A precious memory to cherish

Question ID : 26433073484  
Status : Answered  
Chosen Option : 3

Q.4 Select the most appropriate option to fill in the blank.

When the separatist tendencies become very active, the unity of any nation can be in \_\_\_\_\_.

- Ans
- 1. solitaire
  - 2. docile
  - 3. negotiation
  - 4. peril

Question ID : 26433092407  
Status : Answered  
Chosen Option : 1

Q.5 Select the most appropriate synonym of the given word.

Calamity

- Ans
- 1. Fortune
  - 2. Disaster
  - 3. Windfall
  - 4. Prosperity

Question ID : 26433074044  
Status : Answered  
Chosen Option : 2

Q.6 Select the most appropriate option that can substitute the underlined segment in the given sentence.

The treaty was signed by both the parties to retain the status-quo.

- Ans
- 1. previous condition
  - 2. unnatural behaviour
  - 3. current situation
  - 4. class of societies

Question ID : 26433099875  
Status : Answered  
Chosen Option : 3

Q.7 Select the most appropriate synonym of the word given in the bracket to fill in the blank.

Rohan \_\_\_\_\_ (insufficient) the compassion required to be a doctor.

- Ans
- 1. oversized
  - 2. lacked
  - 3. was deprived
  - 4. voided

Question ID : 26433084620  
Status : Answered  
Chosen Option : 2

**Q.8** Select the correct spelling of the underlined word in the following sentence.

You can eat anything you like accept the rice pudding.

- Ans
- 1. axcept
  - 2. accede
  - 3. except
  - 4. assess

Question ID : 26433072369  
Status : Answered  
Chosen Option : 3

**Q.9** Identify the spelling error in the given sentence and select the option that rectifies the error.

He dared to compete against the experienced boxer.

- Ans
- 1. compete
  - 2. ageinst
  - 3. experianced
  - 4. deired

Question ID : 26433060320  
Status : Answered  
Chosen Option : 1

**Q.10** Parts of the following sentence have been given as options. One of them may contain an error. Select the part that contains the error from the given options. If you don't find any error, mark 'No error' as your answer.

Last night I played my guitar loudly and the neighbours complain.

- Ans
- 1. Last night I played
  - 2. and the neighbours complain
  - 3. No error
  - 4. my guitar loudly

Question ID : 26433090486  
Status : Answered  
Chosen Option : 2

**Q.11** Select the most appropriate meaning of the given idiom.

Has bigger fish to fry

- Ans
- 1. Has better choice of food
  - 2. Has easier plans to solve the issue
  - 3. Has more important work to do
  - 4. Has greater plans to discuss

Question ID : 26433073494  
Status : Answered  
Chosen Option : 3

**Q.12** Select the most appropriate **ANTONYM** of the given word.  
**Escalate**

- Ans**  1. Corrupt  
 2. Intensify  
 3. Diminish  
 4. Enlarge

Question ID : 26433084751  
Status : Answered  
Chosen Option : 3

**Q.13** Select the most appropriate **ANTONYM** of the given word.

**Follow**

- Ans**  1. Ensnare  
 2. Precede  
 3. Supplant  
 4. Displace

Question ID : 26433084599  
Status : Answered  
Chosen Option : 2

**Q.14** Select the correct word for the blanks in the given sentence.

I need a blue \_\_\_\_\_ for writing and my brother runs a \_\_\_\_\_ for dogs.

- Ans**  1. shelter  
 2. nib  
 3. pen  
 4. herd

Question ID : 26433060531  
Status : Answered  
Chosen Option : 3

**Q.15** Select the most appropriate option to fill in the blanks in the given sentence.

Shelley is good at \_\_\_\_\_ and also has a new \_\_\_\_\_ of the Oxford dictionary launched last month.

- Ans**  1. edition; addition  
 2. addition; addition  
 3. addition; edition  
 4. edition; edition

Question ID : 26433084774  
Status : Answered  
Chosen Option : 3

**Comprehension:**

In the following passage, some words have been deleted. Read the passage carefully and select the most appropriate option to fill in each blank.

Looking at the stars is a glimpse (1) \_\_\_\_\_ history. Some of the things we see (2) \_\_\_\_\_ millions of light-years (3) \_\_\_\_\_. Everything in the universe (4) \_\_\_\_\_ a past but stars don't try to hide it. They just (5) \_\_\_\_\_ shining, for everyone to see.

**SubQuestion No : 16**

**Q.16 Select the most appropriate option to fill in blank number 1.**

- Ans  1. among  
 2. besides  
 3. up  
 4. of

Question ID : 26433089313  
Status : Answered  
Chosen Option : 4

**Comprehension:**

In the following passage, some words have been deleted. Read the passage carefully and select the most appropriate option to fill in each blank.

Looking at the stars is a glimpse (1) \_\_\_\_\_ history. Some of the things we see (2) \_\_\_\_\_ millions of light-years (3) \_\_\_\_\_. Everything in the universe (4) \_\_\_\_\_ a past but stars don't try to hide it. They just (5) \_\_\_\_\_ shining, for everyone to see.

**SubQuestion No : 17**

**Q.17 Select the most appropriate option to fill in blank number 2.**

- Ans  1. flush  
 2. separate  
 3. grow  
 4. are

Question ID : 26433089314  
Status : Answered  
Chosen Option : 4

**Comprehension:**

In the following passage, some words have been deleted. Read the passage carefully and select the most appropriate option to fill in each blank.

Looking at the stars is a glimpse (1) \_\_\_\_\_ history. Some of the things we see (2) \_\_\_\_\_ millions of light-years (3) \_\_\_\_\_. Everything in the universe (4) \_\_\_\_\_ a past but stars don't try to hide it. They just (5) \_\_\_\_\_ shining, for everyone to see.

**SubQuestion No : 18**

**Q.18 Select the most appropriate option to fill in blank number 3.**

- Ans  1. now  
 2. away  
 3. between  
 4. close

Question ID : 26433089315  
Status : Answered  
Chosen Option : 2



**Comprehension:**

In the following passage, some words have been deleted. Read the passage carefully and select the most appropriate option to fill in each blank.

Looking at the stars is a glimpse (1) \_\_\_\_\_ history. Some of the things we see (2) \_\_\_\_\_ millions of light-years (3) \_\_\_\_\_. Everything in the universe (4) \_\_\_\_\_ a past but stars don't try to hide it. They just (5) \_\_\_\_\_ shining, for everyone to see.

**SubQuestion No : 19**

**Q.19** Select the most appropriate option to fill in blank number 4.

- Ans  1. have  
 2. should  
 3. has  
 4. can

Question ID : 26433089316

Status : Answered

Chosen Option : 3

**Comprehension:**

In the following passage, some words have been deleted. Read the passage carefully and select the most appropriate option to fill in each blank.

Looking at the stars is a glimpse (1) \_\_\_\_\_ history. Some of the things we see (2) \_\_\_\_\_ millions of light-years (3) \_\_\_\_\_. Everything in the universe (4) \_\_\_\_\_ a past but stars don't try to hide it. They just (5) \_\_\_\_\_ shining, for everyone to see.

**SubQuestion No : 20**

**Q.20** Select the most appropriate option to fill in blank number 5.

- Ans  1. blight  
 2. part  
 3. force  
 4. keep

Question ID : 26433089317

Status : Answered

Chosen Option : 4

Section : Part-D-Hindi

**Q.1** निम्न विकल्पों में से शुद्ध वाक्य का चयन कीजिए।

- Ans  1. विश्वेश्वर ने दो मकान खरीदे।  
 2. वह बैठे और एक कहानी सुनाया।  
 3. पत्नी ने एक पत्र लिखी।  
 4. मैंने आज भात नहीं खाया हूँ।

Question ID : 26433063076

Status : Not Answered

Chosen Option : --

Q.2 निम्नलिखित विकल्पों में से किस एक वाक्य में संख्यावाचक विशेषण का उचित प्रयोग नहीं किया गया है?

- Ans
- 1. गिलास में आधा पानी बचा है।
  - 2. ट्रेन में पचास आदमी थे।
  - 3. मैं शौभाग्यशाली हूँ, जिसका ऐसा मित्र है।
  - 4. कार में तीन लोग थे।

Question ID : 26433062970  
Status : Not Answered  
Chosen Option : --

Q.3 'हमें गरीब लोगों की मदद करनी चाहिए।' ऊपर दिए वाक्य में रेखांकित स्थान पर आने वाले शब्द का पर्यायवाची क्या होगा?

- Ans
- 1. परोपकार
  - 2. दया
  - 3. अवहेलना
  - 4. सहायता

Question ID : 26433085104  
Status : Not Answered  
Chosen Option : --

Q.4 निम्नलिखित विकल्पों में से 'जो किसी व्यक्ति या संस्था का प्रतिनिधित्व करता हो' वाक्यांश के लिए एक सार्थक शब्द क्या होगा?

- Ans
- 1. कर्तव्यपरायण
  - 2. उत्तरदायी
  - 3. प्रतिनिधि
  - 4. निष्ठावान

Question ID : 26433062538  
Status : Not Answered  
Chosen Option : --

Q.5 निम्न वाक्य में रेखांकित शब्द को विकल्पों में दिए गए शब्दों में से सर्वाधिक उपयुक्त शब्द से बदलें।  
समालोचक साहित्य का अन्वेषण करते हैं।

- Ans
- 1. विरेचन
  - 2. अनुशीलन
  - 3. अनुसंधान
  - 4. अध्ययन

Question ID : 26433062877  
Status : Not Answered  
Chosen Option : --

Q.6 'अमृत' का पर्याय निम्न में से क्या है?

- Ans
- 1. तोय
  - 2. पीयूष
  - 3. हय
  - 4. अभ्र

Question ID : 26433062914  
Status : Not Answered  
Chosen Option : --

Q.7 निम्नलिखित वाक्य के किस शब्द में अशुद्धि है?  
राम और श्याम विद्यालय जा रहे हैं।

- Ans
- 1. राम
  - 2. श्याम
  - 3. रहे
  - 4. विद्यालय

Question ID : 26433066764  
Status : Not Answered  
Chosen Option : --

Q.8 'मन वृन्दावन होना' मुहावरे का सही अर्थ है -

- Ans
- 1. घूमने जाना
  - 2. भक्ति भाव होना
  - 3. प्रेम हो जाना
  - 4. अत्यधिक प्रसन्न होना

Question ID : 26433065932  
Status : Not Answered  
Chosen Option : --

Q.9 'खाक में मिलाना' मुहावरे का सही अर्थ क्या है?

- Ans
- 1. जला देना
  - 2. प्रमाण नष्ट कर देना
  - 3. मिट्टी में मिलाना
  - 4. नष्ट करना

Question ID : 26433065916  
Status : Not Answered  
Chosen Option : --

Q.10 'नयनों को सुंदर लगने वाला' वाक्यांश के लिए उचित शब्द क्या होगा?

- Ans
- 1. अतुलनीय
  - 2. अनुपम
  - 3. मनोहर
  - 4. नयनाभिराम

Question ID : 26433067069  
Status : Not Answered  
Chosen Option : --

Q.11 निम्नलिखित वाक्य में रेखांकित खंड के स्थान पर प्रयुक्त होने वाले सबसे उपयुक्त विकल्प का चयन कीजिए।  
मुख्य अतिथि ने छात्रों से पुरस्कार प्रदान किए।

- Ans
- 1. का
  - 2. को
  - 3. के साथ
  - 4. में

Question ID : 26433079664  
Status : Not Answered  
Chosen Option : --

Q.12 निम्नलिखित वाक्यांश के लिए उपयुक्त सार्थक शब्द क्या होगा?  
सूर्य के डूबने का समय

- Ans
- 1. सूर्यास्त
  - 2. उदयाचल
  - 3. क्षितिज
  - 4. अस्ताचल

Question ID : 26433073310  
Status : Not Answered  
Chosen Option : --

Q.13 निम्न वाक्य में रेखांकित शब्द के विलोम शब्द से रिक्त स्थान की पूर्ति कीजिए।  
'कुरूप' होना केवल बाहरी गुण है जबकि \_\_\_\_\_ होना आंतरिक।

- Ans
- 1. सुंदर
  - 2. धनवान
  - 3. धैर्य
  - 4. मलिन

Question ID : 26433085073  
Status : Not Answered  
Chosen Option : --

Q.14 'खगोल' शब्द का विलोम क्या होगा?

- Ans
- 1. पाताल
  - 2. पृथ्वी
  - 3. भूगोल
  - 4. पहाड़

Question ID : 26433067095  
Status : Not Answered  
Chosen Option : --

Q.15 निम्नलिखित में से विशेषण सम्बन्धी अशुद्धि युक्त वाक्य का चयन कीजिए।

- Ans
- 1. यह पीले फूलों की माला है।
  - 2. यह एक अच्छा विकल्प है।
  - 3. तुम बहुत धीरे स्वर में बोलते हो।
  - 4. यह एक बढ़िया किताब है।

Question ID : 26433062998  
Status : Not Answered  
Chosen Option : --

**Comprehension:**

प्रश्न संख्या 1 से 5 तक के उत्तर दिए गए गद्यांश के आधार पर दीजिए।  
मिठाइयों के बाद कुछ दुकानें लोहे की चीज़ों की हैं, कुछ गिलट और कुछ नकली गहनों की। लड़कों के लिए यहाँ कोई 1. \_\_\_\_\_ न था। वे सब आगे बढ़ जाते हैं। हमिद लोहे की दुकान पर रुक जाता है। कई चिमटे रखे हुए थे। उसे ख्याल आया, दादी के पास चिमटा नहीं है। तब से 2. \_\_\_\_\_ उतारती हैं तो हाथ जल जाता है। अगर वह चिमटा ले जाकर दादी को दे दे, तो वह कितनी 3. \_\_\_\_\_ होंगी! फिर उनकी उँगलियाँ कभी न जलेंगी। घर में काम की चीज़ हो जाएगी। खेलौनों से क्या फायदा? व्यर्थ में पैसे खराब होते हैं। ज़रा देर ही तो 4. \_\_\_\_\_ होती है। फिर तो खेलौने को कोई आँख उठाकर नहीं देखता। ये तो घर पहुँचते-पहुँचते टूट-फूट कर बराबर हो जाएँगे। 5. \_\_\_\_\_ कितने काम की चीज़ है! रोटियाँ तब से उतार लो, चूल्हे में सेंक लो।

**SubQuestion No : 16**

Q.16 विकल्पों में से उपयुक्त शब्द के चयन द्वारा रिक्त स्थान 1 की पूर्ति कीजिए।

- Ans
- 1. आकर्षण
  - 2. आसरा
  - 3. विशेषता
  - 4. आवश्यक

Question ID : 26433069919  
Status : Not Answered  
Chosen Option : --

**Comprehension:**

प्रश्न संख्या 1 से 5 तक के उत्तर दिए गए गद्यांश के आधार पर दीजिए।  
मिठाइयों के बाद कुछ दुकानें लोहे की चीज़ों की हैं, कुछ गिलट और कुछ नकली गहनों की। लड़कों के लिए यहाँ कोई 1. \_\_\_\_\_ न था। वे सब आगे बढ़ जाते हैं। हामिद लोहे की दुकान पर रुक जाता है। कई चिमटे रखे हुए थे। उसे ख्याल आया, दादी के पास चिमटा नहीं है। तब से 2. \_\_\_\_\_ उतारती हैं तो हाथ जल जाता है। अगर वह चिमटा ले जाकर दादी को दे दे, तो वह कितनी 3. \_\_\_\_\_ होंगी ! फिर उनकी उँगलियाँ कभी न जलेंगी। घर में काम की चीज़ हो जाएगी। खिलौनों से क्या फायदा ? व्यर्थ में पैसे खराब होते हैं। ज़रा देर ही तो 4. \_\_\_\_\_ होती है। फिर तो खिलौने को कोई आँख उठाकर नहीं देखता। ये तो घर पहुँचते-पहुँचते टूट-फूट कर बराबर हो जाएँगे। 5. \_\_\_\_\_ कितने काम की चीज़ है! रोटियाँ तब से उतार लो, चूल्हे में सेंक लो।

**SubQuestion No : 17**

Q.17 विकल्पों में से उपयुक्त शब्द के चयन द्वारा रिक्त स्थान 2 की पूर्ति कीजिए।

- Ans  1. रोटियाँ  
 2. पूरियाँ  
 3. फुलकियाँ  
 4. कचौरियाँ

Question ID : 26433069920

Status : Not Answered

Chosen Option : --

**Comprehension:**

प्रश्न संख्या 1 से 5 तक के उत्तर दिए गए गद्यांश के आधार पर दीजिए।  
मिठाइयों के बाद कुछ दुकानें लोहे की चीज़ों की हैं, कुछ गिलट और कुछ नकली गहनों की। लड़कों के लिए यहाँ कोई 1. \_\_\_\_\_ न था। वे सब आगे बढ़ जाते हैं। हामिद लोहे की दुकान पर रुक जाता है। कई चिमटे रखे हुए थे। उसे ख्याल आया, दादी के पास चिमटा नहीं है। तब से 2. \_\_\_\_\_ उतारती हैं तो हाथ जल जाता है। अगर वह चिमटा ले जाकर दादी को दे दे, तो वह कितनी 3. \_\_\_\_\_ होंगी ! फिर उनकी उँगलियाँ कभी न जलेंगी। घर में काम की चीज़ हो जाएगी। खिलौनों से क्या फायदा ? व्यर्थ में पैसे खराब होते हैं। ज़रा देर ही तो 4. \_\_\_\_\_ होती है। फिर तो खिलौने को कोई आँख उठाकर नहीं देखता। ये तो घर पहुँचते-पहुँचते टूट-फूट कर बराबर हो जाएँगे। 5. \_\_\_\_\_ कितने काम की चीज़ है! रोटियाँ तब से उतार लो, चूल्हे में सेंक लो।

**SubQuestion No : 18**

Q.18 विकल्पों में से उपयुक्त शब्द के चयन द्वारा रिक्त स्थान 3 की पूर्ति कीजिए।

- Ans  1. सौभाग्यशाली  
 2. प्रसन्न  
 3. निराश  
 4. दुःखी

Question ID : 26433069921

Status : Not Answered

Chosen Option : --

**Comprehension:**

प्रश्न संख्या 1 से 5 तक के उत्तर दिए गए गद्यांश के आधार पर दीजिए।  
मिठाइयों के बाद कुछ दुकानें लोहे की चीज़ों की हैं, कुछ गिलट और कुछ नकली गहनों की। लड़कों के लिए यहाँ कोई 1. \_\_\_\_\_ न था। वे सब आगे बढ़ जाते हैं। हामिद लोहे की दुकान पर रुक जाता है। कई चिमटे रखे हुए थे। उसे ख्याल आया, दादी के पास चिमटा नहीं है। तब से 2. \_\_\_\_\_ उतारती हैं तो हाथ जल जाता है। अगर वह चिमटा ले जाकर दादी को दे दे, तो वह कितनी 3. \_\_\_\_\_ होंगी ! फिर उनकी उँगलियाँ कभी न जलेंगी। घर में काम की चीज़ हो जाएगी। खिलौनों से क्या फायदा ? व्यर्थ में पैसे खराब होते हैं। ज़रा देर ही तो 4. \_\_\_\_\_ होती है। फिर तो खिलौने को कोई आँख उठाकर नहीं देखता। ये तो घर पहुँचते-पहुँचते टूट-फूट कर बराबर हो जाएँगे। 5. \_\_\_\_\_ कितने काम की चीज़ है! रोटियाँ तब से उतार लो, चूल्हे में सेंक लो।

**SubQuestion No : 19**

Q.19 विकल्पों में से उपयुक्त शब्द के चयन द्वारा रिक्त स्थान 4 की पूर्ति कीजिए।

- Ans
- 1. उत्सुकता
  - 2. आशा
  - 3. आस
  - 4. खुशी

Question ID : 26433069922

Status : Not Answered

Chosen Option : --

**Comprehension:**

प्रश्न संख्या 1 से 5 तक के उत्तर दिए गए गद्यांश के आधार पर दीजिए।  
मिठाइयों के बाद कुछ दुकानें लोहे की चीज़ों की हैं, कुछ गिलट और कुछ नकली गहनों की। लड़कों के लिए यहाँ कोई 1. \_\_\_\_\_ न था। वे सब आगे बढ़ जाते हैं। हामिद लोहे की दुकान पर रुक जाता है। कई चिमटे रखे हुए थे। उसे ख्याल आया, दादी के पास चिमटा नहीं है। तब से 2. \_\_\_\_\_ उतारती हैं तो हाथ जल जाता है। अगर वह चिमटा ले जाकर दादी को दे दे, तो वह कितनी 3. \_\_\_\_\_ होंगी ! फिर उनकी उँगलियाँ कभी न जलेंगी। घर में काम की चीज़ हो जाएगी। खिलौनों से क्या फायदा ? व्यर्थ में पैसे खराब होते हैं। ज़रा देर ही तो 4. \_\_\_\_\_ होती है। फिर तो खिलौने को कोई आँख उठाकर नहीं देखता। ये तो घर पहुँचते-पहुँचते टूट-फूट कर बराबर हो जाएँगे। 5. \_\_\_\_\_ कितने काम की चीज़ है! रोटियाँ तब से उतार लो, चूल्हे में सेंक लो।

**SubQuestion No : 20**

Q.20 विकल्पों में से उपयुक्त शब्द के चयन द्वारा रिक्त स्थान 5 की पूर्ति कीजिए।

- Ans
- 1. चिमटा
  - 2. प्लास
  - 3. चिमटी
  - 4. पेचकस

Question ID : 26433069923

Status : Not Answered

Chosen Option : --

# Constable GD in CAPFs SSF Rifleman GD in Assam Rifles and Sepoy in NCB Examination 2022

Roll Number	<b>KD Job Updates</b>
Candidate Name	<b>KD Job Updates</b>
Venue Name	Aurobindo International School Jaipur
Exam Date	07/02/2023
Exam Time	11:45 AM - 12:45 PM
Subject	Constable GD Examination 2022

## Section : Part-A-General Intelligence and Reasoning

Q.1 C \$ D' means 'C is the brother of D'  
'C # D' means 'C is the sister of D'  
'C + D' means 'C is the father of D'  
'C - D' means 'C is the mother of D'  
If 'P \$ Z + Q \$ B', then how is P related to B?

- Ans
- 1. P is the brother of B
  - 2. P is the father of B
  - 3. P is the father-in-law of B
  - 4. P is the paternal uncle of B

Question ID : 26433087126  
Status : Answered  
Chosen Option : 4

Q.2 Select the option that is related to the fifth term in the same way as the second term is related to the first term and the fourth term is related to the third term.  
STAY : ASTY :: BEAM : ABEM :: RIDE : ?

- Ans
- 1. SJEF
  - 2. DRIE
  - 3. DEIR
  - 4. EFHQ

Question ID : 26433087193  
Status : Answered  
Chosen Option : 2

Q.3 Five friends A, B, C, D and E are sitting in a row facing north. E is to the immediate right of D and A is at the extreme left. C is exactly in between A and D. Who will be to the immediate right of E?

- Ans
- 1. B
  - 2. C
  - 3. A
  - 4. D

Question ID : 26433079063  
Status : Answered  
Chosen Option : 1



Q.4 Which of the following numbers will replace the question mark (?) in the given series?  
23, 50, 108, 228, ?, 964

Ans  1. 472

2. 468

3. 474

4. 478

Question ID : 26433085642

Status : Answered

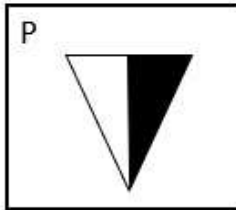
Chosen Option : 1

Q.5 Select the figure that will come in place of the question mark (?) in the following figure series.

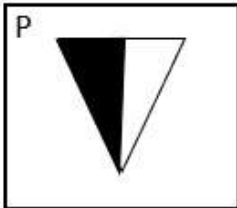


Ans

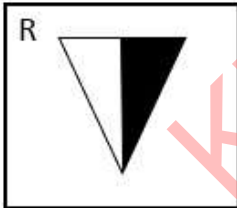
1.



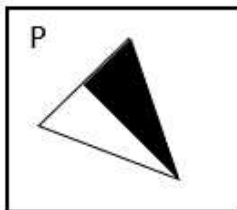
2.



3.



4.



Question ID : 26433081693

Status : Answered

Chosen Option : 1

**Q.6** Select the option that is related to the third word in the same way as the second word is related to the first word.  
(The words must be considered as meaningful English words and must not be related to each other based on the number of letters/number of consonants/vowels in the word)

Monday : Thursday :: Wednesday : ?

- Ans
- 1. Monday
  - 2. Saturday
  - 3. Friday
  - 4. Sunday

Question ID : 26433067977  
Status : Answered  
Chosen Option : 2

**Q.7** In a certain code language, 'we can go' is written as 'ti mi pi', 'can i sit' is written as 'pi ri di' and 'sit and go' is written as 'di si ti'. How will 'and' be written in that language?

- Ans
- 1. ti
  - 2. si
  - 3. di
  - 4. pi

Question ID : 26433070327  
Status : Answered  
Chosen Option : 2

**Q.8** Which letter cluster will replace the question mark (?) to complete the given series?  
KSCA, OXWG, ?, WHKS, AMEY

- Ans
- 1. TQMS
  - 2. XTRM
  - 3. VGMR
  - 4. SCQM

Question ID : 26433079425  
Status : Answered  
Chosen Option : 4

**Q.9** Select the correct combination of mathematical signs to sequentially replace the \* signs and to balance the given equation.  
 $91 * 7 * 2 * 4 * 10 * 5$

- Ans
- 1. +, -, =, ÷, ×
  - 2. ×, ÷, +, -, =
  - 3. ÷, =, ×, +, -
  - 4. ×, ÷, +, =, -

Question ID : 26433094994  
Status : Answered  
Chosen Option : 3

Q.10 Which of the following options represents the correct order of the given words as they would appear in the English dictionary?

1. Expensive
2. Experiment
3. Expertise
4. Expiry
5. Expert

- Ans
- 1. 2, 1, 5, 3, 4
  - 2. 1, 2, 3, 5, 4
  - 3. 1, 2, 3, 4, 5
  - 4. 1, 2, 5, 3, 4

Question ID : 26433086969

Status : Answered

Chosen Option : 4

Q.11 Three statements are given, followed by three conclusions numbered I, II and III. Assuming the statements to be true, even if they seem to be at variance with commonly known facts, decide which of the conclusions logically follow(s) from the statements.

Statements:

- All apples are oranges.
- Some oranges are bananas.
- All bananas are kiwis.

Conclusions:

- I. Some oranges are kiwis.
- II. Some oranges are apples.
- III. Some apples are bananas.

- Ans
- 1. Only conclusions II and III follow
  - 2. Only conclusions I and II follow
  - 3. All conclusions follow
  - 4. Only conclusion III follows

Question ID : 26433090998

Status : Answered

Chosen Option : 2

Q.12 Which of the following terms will replace the question mark (?) in the given series?  
DVH, FWM, JZR, LAW, PDB, ?

- Ans
- 1. REG
  - 2. RFH
  - 3. SFG
  - 4. SHE

Question ID : 26433069454

Status : Answered

Chosen Option : 1

**Q.13** Eight people, D, E, G, H, M, N, Y and Z are sitting in a straight line, facing north. Y sits at one of the extreme ends of the line. Only two people sit between Y and Z. E sits third to the right of Z. Only four people sit between E and D. G sits at one of the positions to the right of E. N is not an immediate neighbour of Z. H sits second to the right of M. How many people sit to the left of M?

- Ans
- 1. Two
  - 2. None
  - 3. Three
  - 4. One

Question ID : 26433092425  
Status : Answered  
Chosen Option : 1

**Q.14** Which of the mathematical signs should be interchanged in the below equation to make it mathematically correct?  
 $12 + 112 \div 16 - 8 \times 64 = 140$

- Ans
- 1. + and -
  - 2.  $\div$  and  $\times$
  - 3. + and  $\times$
  - 4. + and  $\div$

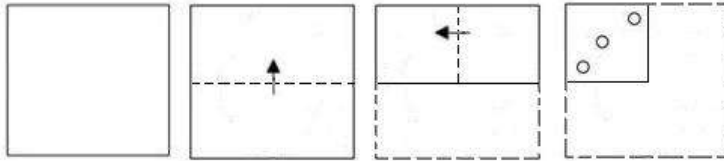
Question ID : 264330117562  
Status : Answered  
Chosen Option : 3

**Q.15** Which of the following numbers will replace the question mark (?) in the given series?  
665, 670, 663, 674, 661, 678, ?, 682

- Ans
- 1. 680
  - 2. 625
  - 3. 676
  - 4. 659

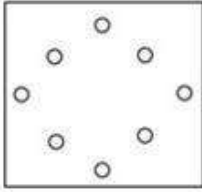
Question ID : 26433089767  
Status : Answered  
Chosen Option : 4

Q.16 A paper is folded and cut as shown below. How will it appear when unfolded?

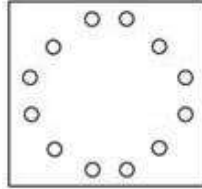


Ans

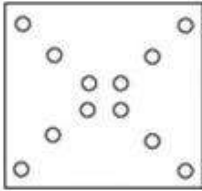
✗ 1.



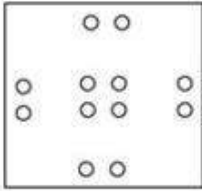
✓ 2.



✗ 3.

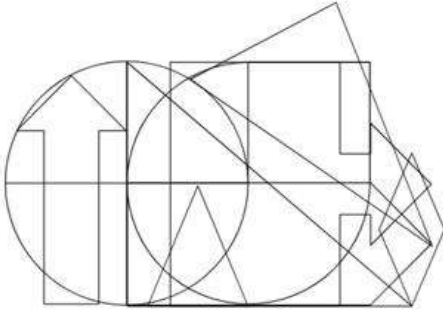


✗ 4.




Question ID : 26433090955  
Status : Answered  
Chosen Option : 2

Q.17 Select the option figure which is embedded in the given figure. (Rotation is Not allowed)




Ans

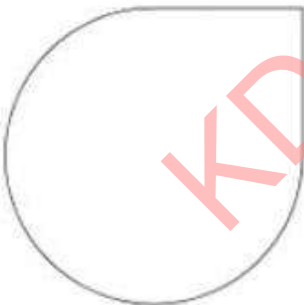
✗ 1.




✗ 2.



✓ 3.



✗ 4.



KD Job Updates

Question ID : 26433085745

Status : Answered

Chosen Option : 3

Q.18 In a certain code language, the word 'GLAD' is written as ZLADG. The word 'SCAR' is written as 'ZCARS'. How is the word 'LOST' written in the same code language?

- Ans
- 1. ZTLOS
  - 2. ZOSTL
  - 3. ZOTLS
  - 4. ZLOST

Question ID : 26433090108  
Status : Answered  
Chosen Option : 2

Q.19 Select the option that is related to the fourth term in the same way as the first term is related to the second term and the fifth term is related to the sixth term.  
407 : 37 :: ? : 59 :: 253 : 23

- Ans
- 1. 649
  - 2. 738
  - 3. 341
  - 4. 539

Question ID : 26433074549  
Status : Answered  
Chosen Option : 1

Q.20 Select the correct mirror image of the given figure, when the mirror is placed at MN as shown below.



- Ans
- 1.  $b\uparrow\cap C\uparrow\Delta E$
  - 2.  $b\uparrow a C\uparrow\nabla E$
  - 3.  $b\uparrow a \cap \uparrow \Delta E$
  - 4.  $b\uparrow \cap C\uparrow \Delta E$

Question ID : 26433090147  
Status : Answered  
Chosen Option : 1

Q.1 Famous ruler Kanishka belonged to the \_\_\_\_\_ dynasty.

- Ans  1. Huna  
 2. Kushana  
 3. Shaka  
 4. Shunga

Question ID : 26433089863  
Status : Answered  
Chosen Option : 2

Q.2 All executive actions of the Governor of a state shall be expressed to be taken in the name of \_\_\_\_\_.

- Ans  1. Advocate general  
 2. Chief Minister  
 3. Governor  
 4. Council of Ministers

Question ID : 26433089187  
Status : Answered  
Chosen Option : 4

Q.3 Battle of Buxar was fought in \_\_\_\_\_.

- Ans  1. 1755  
 2. 1764  
 3. 1757  
 4. 1760

Question ID : 264330115726  
Status : Answered  
Chosen Option : 2

Q.4 Vishu is predominantly celebrated in which of the following states of India?

- Ans  1. Assam  
 2. Rajasthan  
 3. Madhya Pradesh  
 4. Kerala

Question ID : 26433094896  
Status : Answered  
Chosen Option : 1



Q.5 From the \_\_\_\_\_ budget, the practice of showing budget deficit has been discontinued in India.

Ans  1. 1997-98

2. 1994-95

3. 2001-02

4. 2003-04

Question ID : 26433054803  
Status : Not Answered  
Chosen Option : --

Q.6 The maximum length of the touch line in a football match is \_\_\_\_\_

Ans  1. 110 m

2. 100 m

3. 90 m

4. 120 m

Question ID : 26433090753  
Status : Answered  
Chosen Option : 3

Q.7 A nation that has positive net exports enjoys a trade \_\_\_\_\_.

Ans  1. surplus

2. deficit

3. loan

4. amount

Question ID : 264330115349  
Status : Answered  
Chosen Option : 1

Q.8 The sun is about \_\_\_\_\_ km away from the earth.

Ans  1. 20 million

2. 150 million

3. 50 million

4. 100 million

Question ID : 264330116092  
Status : Answered  
Chosen Option : 4

**Q.9** The 108 feet bronze statue of prosperity in Bengaluru, inaugurated by Prime Minister Narendra Modi, has been built to commemorate whom?

- Ans**
- 1. Vallabhbhai Patel
  - 2. Rishabhanatha
  - 3. Nadaprabhu Kempegowda
  - 4. Magadi Kempegowda

Question ID : 264330115052  
Status : Answered  
Chosen Option : 2

**Q.10** Tanjore Balasaraswati was a well-known \_\_\_\_\_ dancer.

- Ans**
- 1. Kuchipudi
  - 2. Odissi
  - 3. Sattriya
  - 4. Bharatnatyam

Question ID : 264330115894  
Status : Not Answered  
Chosen Option : --

**Q.11** Give an example of means of personal communication.

- Ans**
- 1. television
  - 2. computer
  - 3. radio
  - 4. telephone service

Question ID : 264330115596  
Status : Answered  
Chosen Option : 4

**Q.12** Under which of the following articles has the Right to property been shifted as a legal right?

- Ans**
- 1. Article 301-A
  - 2. Article 333
  - 3. Article 300-A
  - 4. Article 345

Question ID : 26433089181  
Status : Answered  
Chosen Option : 3

**Q.13 Who among the following political leaders succeeded Venkaiah Naidu to become Vice President of India in August 2022?**

- Ans
- 1. Bhagat Singh Koshyari
  - 2. Arif Mohammed Khan
  - 3. Biswabhusan Harichandan
  - 4. Jagdeep Dhankhar

Question ID : 264330114888  
Status : Answered  
Chosen Option : 4

**Q.14 Among the given options, \_\_\_\_\_ is the method of irrigation.**

- Ans
- 1. double cropping
  - 2. ploughing
  - 3. step cultivation
  - 4. canal

Question ID : 264330115434  
Status : Answered  
Chosen Option : 4

**Q.15 Identify an element that is NOT a semi-metal.**

- Ans
- 1. Germanium
  - 2. Caesium
  - 3. Arsenic
  - 4. Silicon

Question ID : 26433087853  
Status : Not Answered  
Chosen Option : --

**Q.16 Where can you find 70 percent of freshwater resources on the Earth?**

- Ans
- 1. The Pacific Ocean
  - 2. Himalayas and the Arctic Ocean
  - 3. Antarctica, Greenland and the mountainous regions of the world
  - 4. Himalayas and the Bay of Bengal

Question ID : 26433087892  
Status : Answered  
Chosen Option : 3

**Q.17 Which political leader became Member of Legislative Assembly from Thrikkakara constituency, Kerala in June 2022?**

- Ans**  1. Uma Thomas  
 2. Pinarayi Vijayan  
 3. Amit Shah  
 4. Jagdeep Dhankhar

Question ID : 264330114972  
Status : Not Answered  
Chosen Option : --

**Q.18 Consumers expect better-quality foods with \_\_\_\_\_ of nutrients.**

- Ans**  1. contamination  
 2. adulteration  
 3. retention  
 4. exclusion

Question ID : 264330115265  
Status : Answered  
Chosen Option : 1

**Q.19 What are the height of Badminton posts?**

- Ans**  1. 1.80 m  
 2. 1.45 m  
 3. 1.85 m  
 4. 1.55 m

Question ID : 26433092336  
Status : Answered  
Chosen Option : 4

**Q.20 Who among the following is a Bharatanatyam performer?**

- Ans**  1. Sitara Devi  
 2. Kalamandalam Kalyanikutty Amma  
 3. V Satyanarayana Sarma  
 4. Tanjore Balasaraswati

Question ID : 26433071691  
Status : Not Answered  
Chosen Option : --

Q.1 40 men can complete a work in 15 days. They started working, and after 5 days 10 more men joined them. In how many days will the total work be completed?

- Ans
- 1. 10
  - 2. 12
  - 3. 11
  - 4. 13

Question ID : 26433082991

Status : Answered

Chosen Option : 4

Q.2 The ticket of an IPL match in Chennai was ₹2,500. When the price of the ticket was lowered, the sale(number of tickets) of the tickets was increased by 50%, but the revenue noticed a reduction of 15%. What was the reduced price of the ticket (rounded off to two decimal places)?

- Ans
- 1. ₹2,125.67
  - 2. ₹2,250.33
  - 3. ₹1416.67
  - 4. ₹1,450.33

Question ID : 26433076222

Status : Answered

Chosen Option : 3

Q.3 A mixture of milk and water contains 18 parts of milk and 8 parts of water. How much fraction of the mixture should be removed and replaced by water so the ratio of water and milk are equal?

- Ans
- 1.  $\frac{1}{18}$
  - 2.  $\frac{12}{18}$
  - 3.  $\frac{10}{18}$
  - 4.  $\frac{5}{18}$

Question ID : 26433081548

Status : Answered

Chosen Option : 4

Q.4 If the height of a cylinder is increased by 25%, and the radius of its base is decreased by 15%, then find the percentage increase/decrease in its curved surface area.

- Ans
- 1. increases 3.25%
  - 2. decreases 4.15%
  - 3. decreases 2.23%
  - 4. increases 6.25%

Question ID : 26433075006  
Status : Answered  
Chosen Option : 4

Q.5 A sum of ₹1,20,000 was invested in a fixed deposit in the year 2019 at the rate of 12% per annum compounding annually. What will its approximate value be in the year 2022?

- Ans
- 1. ₹1,68,591
  - 2. ₹1,43,200
  - 3. ₹1,61,253
  - 4. ₹1,56,400

Question ID : 26433091564  
Status : Answered  
Chosen Option : 1

Q.6 A and B working together can finish a project in 16 days while B alone can do it in 24 days. In how many days can A alone finish the project?

- Ans
- 1. 36 days
  - 2. 44 days
  - 3. 48 days
  - 4. 42 days

Question ID : 26433080362  
Status : Answered  
Chosen Option : 3

Q.7 A policeman spots a thief 120 m ahead, immediately the policeman starts chasing the thief. The policeman runs 26 m in a minute and the thief runs 20 m in a minute. In what time will the policeman catch the thief?

- Ans
- 1. 21 min
  - 2. 20 min
  - 3. 19 min
  - 4. 18 min

Question ID : 26433075474  
Status : Answered  
Chosen Option : 2

Q.8 An almirah was bought for ₹15,500 and ₹260 was spent on its transportation. At what price should it be sold to gain 20%?

- Ans
- 1. ₹18912
  - 2. ₹18916
  - 3. ₹18914
  - 4. ₹18910

Question ID : 26433079772  
Status : Answered  
Chosen Option : 1

Q.9 A thief is observed by a policeman from a distance of 420 m. The thief starts running and the policeman chases him. The policeman and the thief run at a speed of 25 km/h and 20 km/h, respectively. What is the distance between them after three minutes?

- Ans
- 1. 250 m
  - 2. 320 m
  - 3. 230 m
  - 4. 170 m

Question ID : 26433075739  
Status : Answered  
Chosen Option : 4

Q.10 What is the value of the given expression?

$$9 \div \frac{3}{5} + 25 \left( \frac{4}{5} + \frac{3}{15} \right) - 9 \text{ of } \frac{2}{3}$$

- Ans
- 1. 45
  - 2. 34
  - 3. 42
  - 4. 37

Question ID : 26433081636  
Status : Answered  
Chosen Option : 2

Q.11 If the LCM of the first 110 natural numbers is N, then find the LCM of the first 115 natural numbers.

- Ans
- 1.  $111 \times 112 \times 113 \times 114 \times 115N$
  - 2.  $113N$
  - 3.  $115N$
  - 4.  $111 \times 113N$

Question ID : 26433090316  
Status : Answered  
Chosen Option : 2

Q.12 A shopkeeper is selling a gift packet of fruits in which he is mixing apples and mangoes. The packet contains total of 12 kg fruits at an average rate of ₹100 per kg. In the packet there are 8 kg of apples at the rate of ₹90 per kg, while there are 4 kg of mangoes at the rate of ₹X per kg. Find the value of 'X'.  
Note: All other charges are to be ignored for packing.

- Ans
- 1. 95
  - 2. 100
  - 3. 120
  - 4. 110

Question ID : 26433082498  
Status : Answered  
Chosen Option : 3

Q.13 The total surface area of a sphere is  $22176 \text{ cm}^2$ . The diameter of the sphere is:

(use  $\pi = \frac{22}{7}$ )

- Ans
- 1. 42 cm
  - 2. 84 cm
  - 3. 24 cm
  - 4. 21 cm

Question ID : 26433087407  
Status : Answered  
Chosen Option : 2

Q.14 A sum of money becomes Rs.4,900 in 3 years and Rs.6,400 in 5 years on compound interest, compounded annually. Find the rate of interest p.a.

- Ans
- 1.  $11 \frac{2}{7} \%$
  - 2.  $12 \frac{2}{7} \%$
  - 3.  $14 \frac{2}{7} \%$
  - 4.  $13 \frac{2}{7} \%$

Question ID : 26433082979  
Status : Answered  
Chosen Option : 3

Q.15 If 12 men can build a wall 60 metres long in 5 days, then what length of a similar wall can be built by 24 men in 2 days?

- Ans
- 1. 48 metres
  - 2. 44 metres
  - 3. 46 metres
  - 4. 42 metres

Question ID : 26433080122  
Status : Answered  
Chosen Option : 1



Q.16 Ramesh was receiving two offers on a book with a marked price of ₹800. Either two successive discounts of 20% each, or two successive discounts of 30% and 10%. How much more must Ramesh have saved if he chose the superior scheme over the other?

- Ans
- 1. ₹6
  - 2. ₹8
  - 3. ₹16
  - 4. ₹20

Question ID : 26433076328  
Status : Answered  
Chosen Option : 2

Q.17 The profit percentage made on an item sold for Rs.1,920 is equal to the loss percentage made on selling the same item for Rs.1,280. What should the item be sold for in order to make a 25% profit?

- Ans
- 1. Rs.1,940
  - 2. Rs.2,020
  - 3. Rs.2,000
  - 4. Rs.1,960

Question ID : 26433075847  
Status : Answered  
Chosen Option : 3

Q.18 When the price of a Bluetooth earphone is increased by 12%, its sale(number of Bluetooth earphones) is reduced by 20%. What is the net impact on its revenue?

- Ans
- 1. 14.0% decrement
  - 2. 10.4% increment
  - 3. 14.0% increment
  - 4. 10.4% decrement

Question ID : 26433080294  
Status : Answered  
Chosen Option : 4

Q.19 An electronic shop is giving 20% discount on the purchase of any electronic device having price ₹80,000 or above, 16% discount on the items priced between ₹50,000 and ₹79,999, 10% discount on items ranging from ₹20,000 to ₹49,999, and 3% discount on purchase of any mobile accessories such as mobile covers, earphones, chargers, etc. As per terms and conditions, all these discounts are independent and are offered only on the basis of price range. Ajay bought a mobile of price ₹40,000, a laptop of ₹90,000, and a mobile cover of ₹400. How much total discount did he get?

- Ans
- 1. ₹22,002
  - 2. ₹21,012
  - 3. ₹22,120
  - 4. ₹22,012

Question ID : 26433082504  
Status : Answered  
Chosen Option : 4

**Q.20** In 90 litres of a mixture of milk and water, the ratio of milk and water is 4 : 1. How much water should be added in the mixture so that the ratio of milk to water becomes 3 : 1?

- Ans
- 1. 5.5 litres
  - 2. 6.5 litres
  - 3. 7 litres
  - 4. 6 litres

Question ID : 26433076189  
Status : Answered  
Chosen Option : 4

Section : Part-D-English

**Q.1** Select the correct spelling of the word to fill in the blank in the given sentence.

Trouble and disease give us bad \_\_\_\_\_.

- Ans
- 1. expereinces
  - 2. xperiences
  - 3. xpreiences
  - 4. experiences

Question ID : 26433084768  
Status : Answered  
Chosen Option : 4

**Q.2** Identify the MISSPELT word in the following sentence.

In our school, innovative and effective academic and evaluation strategies and intervantions are needed.

- Ans
- 1. strategies
  - 2. innovative
  - 3. intervantions
  - 4. effective

Question ID : 26433073660  
Status : Answered  
Chosen Option : 3

**Q.3** Select the most appropriate option that can substitute the underlined segment in the given sentence.

Travel on a hot dusty train gives me no pleasure.

- Ans
- 1. Travelling at a
  - 2. Travel in a
  - 3. Travels on a
  - 4. Travelling on a

Question ID : 264330102395  
Status : Answered  
Chosen Option : 4

Q.4 Complete the sentence by choosing the most appropriate synonym of the underlined word.

If the answer is false, it is \_\_\_\_\_.

- Ans
- 1. genuine
  - 2. correct
  - 3. right
  - 4. untrue

Question ID : 26433088863  
Status : Answered  
Chosen Option : 4

Q.5 The following sentence has been split into four segments. Identify the segment that contains a grammatical error.

I visit my school / once a year / to meeting / my former teachers.

- Ans
- 1. my former teachers
  - 2. I visit my school
  - 3. once a year
  - 4. to meeting

Question ID : 264330108880  
Status : Answered  
Chosen Option : 4

Q.6 Select the most appropriate meaning of the underlined idiom that can be substituted in the following sentence.

I am at sea after listening to the arguments.

- Ans
- 1. sailing on the seas
  - 2. perplexed
  - 3. stuck in the seas
  - 4. totally relaxed

Question ID : 26433072235  
Status : Answered  
Chosen Option : 4

Q.7 Select the most appropriate synonym of the given word.

Slack

- Ans
- 1. Hyperactive
  - 2. Provocation
  - 3. Tight
  - 4. Inactive

Question ID : 26433088760  
Status : Answered  
Chosen Option : 4

**Q.8** Select the correct option to substitute the underlined segment in the given sentence. If no substitution is required, select 'No substitution'.

One must do his work.

- Ans
- 1. her work
  - 2. their work
  - 3. one's work
  - 4. No substitution

Question ID : 26433090809  
Status : Answered  
Chosen Option : 3

**Q.9** Select the most appropriate idiom for the underlined segment.  
I thought I finished my work but I realised that all of my work is faulty. I have to start it over again.

- Ans
- 1. break new ground
  - 2. get a pat on the back
  - 3. go back to the drawing board
  - 4. break the back of something

Question ID : 264330100298  
Status : Answered  
Chosen Option : 3

**Q.10** Select the most appropriate synonym of the word given in brackets and complete the sentence.

The weather is \_\_\_\_\_ (gloomy) and windy.

- Ans
- 1. bright
  - 2. jovial
  - 3. cloudy
  - 4. shiny

Question ID : 26433089400  
Status : Answered  
Chosen Option : 3

**Q.11** Select the most appropriate option that can substitute the underlined segment in the given sentence.

She heard a loud humming noise and guess that it is being an aeroplane.

- Ans
- 1. to guess that it is being the aeroplane
  - 2. guessed that it was an aeroplane
  - 3. guessing that it were aeroplane
  - 4. has guessed that it is aeroplane

Question ID : 26433092289  
Status : Answered  
Chosen Option : 2

Q.12 Select the most appropriate homonym to fill in the blank.

I had to keep very \_\_\_\_\_ when the photographer was taking my picture.

- Ans
- 1. lid
  - 2. chum
  - 3. shrill
  - 4. still

Question ID : 26433088788  
Status : Answered  
Chosen Option : 4

Q.13 Select the most appropriate ANTONYM of the word given in the bracket to fill in the blank.

If a person commits a crime with (malice)\_\_\_\_\_, they did it on purpose.

- Ans
- 1. rancour
  - 2. goodwill
  - 3. disdain
  - 4. disgust

Question ID : 26433059598  
Status : Answered  
Chosen Option : 3

Q.14 Select the most appropriate synonym for the underlined word in the given sentence.

He was  brusque  and candid in the interview.

- Ans
- 1. abrupt
  - 2. vociferous
  - 3. brave
  - 4. pursue

Question ID : 26433072074  
Status : Answered  
Chosen Option : 2

Q.15 Select the most appropriate ANTONYM of the underlined word in the given sentence.  
The engineers finally  destroyed  the ship to its original form.

- Ans
- 1. reversed
  - 2. restored
  - 3. started
  - 4. abolished

Question ID : 26433055484  
Status : Answered  
Chosen Option : 2

**Comprehension:**

In the following passage, some words have been deleted. Read the passage carefully and select the most appropriate option to fill in each blank.

And you could hardly call it a (1) \_\_\_\_\_ at all, because Uncle Bob held his (2) \_\_\_\_\_ as though he had hold of a shovel, and tried to scoop up every ball that came over the net, even those he should have left for Uncle Ted. And then he took off his (3) \_\_\_\_\_ and played in just his trousers and stockinged feet, and with his face split nearly in two by his grin, he started (4) \_\_\_\_\_ over the net, and playing on Arnold's side instead. And the ball would (5) \_\_\_\_\_ on the roof of the house, or land in the rambler roses and bring down a shower of petals, and getting it again Uncle Bob would shake down more petals all over himself, so they'd be in his hair.

**SubQuestion No : 16**

**Q.16 Select the most appropriate option to fill in blank no. 1.**

Ans  1. game

2. cork

3. racket

4. ball

Question ID : 26433092980

Status : Answered

Chosen Option : 1

**Comprehension:**

In the following passage, some words have been deleted. Read the passage carefully and select the most appropriate option to fill in each blank.

And you could hardly call it a (1) \_\_\_\_\_ at all, because Uncle Bob held his (2) \_\_\_\_\_ as though he had hold of a shovel, and tried to scoop up every ball that came over the net, even those he should have left for Uncle Ted. And then he took off his (3) \_\_\_\_\_ and played in just his trousers and stockinged feet, and with his face split nearly in two by his grin, he started (4) \_\_\_\_\_ over the net, and playing on Arnold's side instead. And the ball would (5) \_\_\_\_\_ on the roof of the house, or land in the rambler roses and bring down a shower of petals, and getting it again Uncle Bob would shake down more petals all over himself, so they'd be in his hair.

**SubQuestion No : 17**

**Q.17 Select the most appropriate option to fill in blank no. 2.**

Ans  1. softball

2. racket

3. ball

4. cork

Question ID : 26433092981

Status : Answered

Chosen Option : 2

**Comprehension:**

In the following passage, some words have been deleted. Read the passage carefully and select the most appropriate option to fill in each blank.

And you could hardly call it a (1) \_\_\_\_\_ at all, because Uncle Bob held his (2) \_\_\_\_\_ as though he had hold of a shovel, and tried to scoop up every ball that came over the net, even those he should have left for Uncle Ted. And then he took off his (3) \_\_\_\_\_ and played in just his trousers and stockinged feet, and with his face split nearly in two by his grin, he started (4) \_\_\_\_\_ over the net, and playing on Arnold's side instead. And the ball would (5) \_\_\_\_\_ on the roof of the house, or land in the rambler roses and bring down a shower of petals, and getting it again Uncle Bob would shake down more petals all over himself, so they'd be in his hair.

**SubQuestion No : 18**

**Q.18 Select the most appropriate option to fill in blank no. 3.**

- Ans
- 1. pants
  - 2. belt
  - 3. shirt
  - 4. trousers

Question ID : 26433092982

Status : Answered

Chosen Option : 3

**Comprehension:**

In the following passage, some words have been deleted. Read the passage carefully and select the most appropriate option to fill in each blank.

And you could hardly call it a (1) \_\_\_\_\_ at all, because Uncle Bob held his (2) \_\_\_\_\_ as though he had hold of a shovel, and tried to scoop up every ball that came over the net, even those he should have left for Uncle Ted. And then he took off his (3) \_\_\_\_\_ and played in just his trousers and stockinged feet, and with his face split nearly in two by his grin, he started (4) \_\_\_\_\_ over the net, and playing on Arnold's side instead. And the ball would (5) \_\_\_\_\_ on the roof of the house, or land in the rambler roses and bring down a shower of petals, and getting it again Uncle Bob would shake down more petals all over himself, so they'd be in his hair.

**SubQuestion No : 19**

**Q.19 Select the most appropriate option to fill in blank no. 4.**

- Ans
- 1. swimming
  - 2. slimming
  - 3. skipping
  - 4. jumping

Question ID : 26433092983

Status : Answered

Chosen Option : 4

**Comprehension:**

In the following passage, some words have been deleted. Read the passage carefully and select the most appropriate option to fill in each blank.

And you could hardly call it a (1) \_\_\_\_\_ at all, because Uncle Bob held his (2) \_\_\_\_\_ as though he had hold of a shovel, and tried to scoop up every ball that came over the net, even those he should have left for Uncle Ted. And then he took off his (3) \_\_\_\_\_ and played in just his trousers and stockinged feet, and with his face split nearly in two by his grin, he started (4) \_\_\_\_\_ over the net, and playing on Arnold's side instead. And the ball would (5) \_\_\_\_\_ on the roof of the house, or land in the rambler roses and bring down a shower of petals, and getting it again Uncle Bob would shake down more petals all over himself, so they'd be in his hair.

**SubQuestion No : 20****Q.20 Select the most appropriate option to fill in blank no. 5.****Ans** ✓ 1. bounce

✗ 2. flake

✗ 3. jump

✗ 4. leap

Question ID : 26433092984

Status : Answered

Chosen Option : 1

Section : Part-D-Hindi

**Q.1 'चक्की के दो पाटों में कोई सबुत नहीं बचता।' इस वाक्य के निम्न में से किस शब्द में वर्तनी की अशुद्धि है?****Ans** ✗ 1. बचता

✗ 2. पाटों

✓ 3. सबुत

✗ 4. चक्की

Question ID : 26433085066

Status : Not Answered

Chosen Option : --

**Q.2 निम्नलिखित में से 'युद्ध' के लिए समानार्थी शब्द नहीं है-****Ans** ✗ 1. रण

✗ 2. समर

✗ 3. संग्राम

✓ 4. सहचर

Question ID : 26433085082

Status : Not Answered

Chosen Option : --



Q.3 निम्नलिखित शब्द के सही पर्यायवाची शब्द का चयन विकल्पों में से कीजिए।  
समुद्र

- Ans
- 1. सरिता
  - 2. सारंग
  - 3. पयोनिधि
  - 4. व्याल

Question ID : 26433066941  
Status : Not Answered  
Chosen Option : --

Q.4 'घाव पर नमक \_\_\_\_\_',  
उपरोक्त मुहावरे में रिक्त स्थान के लिए उपयुक्त विकल्प का चयन कीजिए।

- Ans
- 1. मलना
  - 2. डालना
  - 3. छिड़कना
  - 4. रगड़ना

Question ID : 26433069685  
Status : Not Answered  
Chosen Option : --

Q.5 निम्नलिखित विकल्पों में से किस एक वाक्य में सर्वनाम के प्रयोग सम्बन्धी अशुद्धि है?

- Ans
- 1. ये मेरे पिता जी हैं।
  - 2. जो कुछ मेरा है, वह सब आपका है।
  - 3. मोहन तुम आकर क्षमा माँगेगा।
  - 4. तू बड़ा हो गया है, तेरी शादी करा दूँ।

Question ID : 26433062976  
Status : Not Answered  
Chosen Option : --

Q.6 'पंजाब \_\_\_\_\_।'।  
उपर्युक्त वाक्य में रिक्त स्थान के लिए उपयुक्त विकल्प निम्न में से क्या होगा?

- Ans
- 1. से अभिप्राय पांच नदियों की धरती से है
  - 2. से अभिप्राय पांच धर्मों की धरती से है
  - 3. से अभिप्राय पांच ऋषियों की धरती से है
  - 4. से अभिप्राय पांच संतों की धरती से है

Question ID : 26433067050  
Status : Not Answered  
Chosen Option : --

Q.7 "वह व्यक्ति उनका अनुचर है।"  
उक्त वाक्य में प्रयुक्त 'अनुचर' के स्थान पर उसके समानार्थी शब्द का प्रयोग निम्न में से किस वाक्य में नहीं किया गया है?

- Ans  1. वह व्यक्ति उनका निर्जर है।  
 2. वह व्यक्ति उनका सेवक है।  
 3. वह व्यक्ति उनका चाकर है।  
 4. वह व्यक्ति उनका नौकर है।

Question ID : 26433067034  
Status : Not Answered  
Chosen Option : --

Q.8 निम्नलिखित में से शुद्ध वाक्य है-

- Ans  1. मोहन बहुत मेधावी छात्र है।  
 2. मोहन बहुत माधव छात्रा है।  
 3. मोहन बहत मेधावी छात्र है।  
 4. मोहन बहुत मेधाव छात्र है।

Question ID : 26433080932  
Status : Not Answered  
Chosen Option : --

Q.9 निम्न में से कौन-सा शब्द समूह 'बादल' शब्द का पर्यायवाची समूह है?

- Ans  1. जलद, नीरद  
 2. जलधर, नग  
 3. क्षणदा, जलधर  
 4. गिरी, ओद्रे

Question ID : 26433067073  
Status : Not Answered  
Chosen Option : --

Q.10 निम्नलिखित में से उस वाक्य का चयन कीजिए जिसमें 'अनिश्चयवाचक सर्वनाम' का शुद्ध प्रयोग किया गया है।

- Ans  1. आपने तो मेरी बात का कुछ का कुछ अर्थ निकाल लिया।  
 2. आप कोई हैं जो दुखी होकर वन में भटक रहे हैं।  
 3. यह कार्य कुछ नहीं कर सकता।  
 4. मेरी समझ में कोई न कोई नहीं आ रहा है।

Question ID : 26433063007  
Status : Not Answered  
Chosen Option : --

Q.11 'अनुचित बात के लिए आग्रह', वाक्यांश के लिए एक शब्द \_\_\_\_\_ है।

- Ans
- 1. सत्याग्रह
  - 2. दुस्साहस
  - 3. दुराग्रही
  - 4. दुराग्रह

Question ID : 26433062937  
Status : Not Answered  
Chosen Option : --

Q.12 'डंके की \_\_\_\_\_ पर कहना'  
उक्त मुहावरे में रिक्त स्थान की पूर्ति उचित शब्द द्वारा कीजिए।

- Ans
- 1. टंकार
  - 2. आवाज
  - 3. चोट
  - 4. मार

Question ID : 26433069690  
Status : Not Answered  
Chosen Option : --

Q.13 निम्नलिखित वाक्य के रेखांकित शब्द के स्थान पर सर्वोचित विकल्प का चयन कीजिए।  
उसने उपाय किया ताकि परीक्षा उत्तीर्ण कर सके।

- Ans
- 1. तप
  - 2. अनुष्ठान
  - 3. सहयोग
  - 4. परिश्रम

Question ID : 26433084963  
Status : Not Answered  
Chosen Option : --

Q.14 निम्न वाक्यांश के लिए उपयुक्त एक शब्द का चयन विकल्पों में से कीजिए।  
भविष्य में होने वाला

- Ans
- 1. क्रेता
  - 2. अपूर्व
  - 3. भावी
  - 4. वक्ता

Question ID : 26433070093  
Status : Not Answered  
Chosen Option : --

Q.15 'आज की कथा को ध्यान से सुननी चाहिए।' इस वाक्य में अशुद्ध शब्द है-

- Ans  1. सुननी  
 2. चाहिए  
 3. कथा  
 4. ध्यान

Question ID : 26433066798

Status : Not Answered

Chosen Option : --

**Comprehension:**

प्रश्न संख्या 1-5 के उत्तर निम्न अवतरण के आधार पर दीजिए।  
भारतीय मनीषा ने जिस प्रकार संतोष करने के लिए हमें सीख दी है, उसी तरह (1). \_\_\_\_\_ करने के लिए भी कहा है। चाणक्य के अनुसार हमें इन तीन उपक्रमों में संतोष नहीं करना चाहिए- त्रिषु नैव कर्तव्यः विद्यायां जप दानयोः अर्थात् विद्यार्जन में कभी संतोष नहीं करना चाहिए कि बस, बहुत ज्ञान (2). \_\_\_\_\_ कर लिया इसी तरह जप और दान करने में भी (3). \_\_\_\_\_ नहीं करना चाहिए। वैसे संतोष करने के लिए तो कहा गया है- जब आवे संतोष धन, सब धन धुरि समान। हमें जो प्राप्त हो उसमें ही संतोष करना चाहिए- 'साईं इतना दीजिए जामे कुटुंब समाय मैं भी भूखा न रहूँ, (4). \_\_\_\_\_ न भूखा जाए'। आज के मनुष्य की सांसारिकता में बढ़ती लिप्तता, वैश्विक बाज़ारवाद और भौतिकता की चकाचौंध के कारण संत्रास, कुंठा और असंतोष दिन-प्रतिदिन बढ़ता ही जा रहा है। इसी असंतोष को दूर करने के लिए संतोषी बनना (5). \_\_\_\_\_ हो गया है।

SubQuestion No : 16

Q.16 रिक्त स्थान (1) के लिए सर्वाधिक उपयुक्त शब्द इनमें से कौन सा होगा?

- Ans  1. प्रेम  
 2. लालच  
 3. गुस्सा  
 4. असंतोष

Question ID : 26433092226

Status : Not Answered

Chosen Option : --

**Comprehension:**

प्रश्न संख्या 1-5 के उत्तर निम्न अवतरण के आधार पर दीजिए।  
भारतीय मनीषा ने जिस प्रकार संतोष करने के लिए हमें सीख दी है, उसी तरह (1). \_\_\_\_\_ करने के लिए भी कहा है। चाणक्य के अनुसार हमें इन तीन उपक्रमों में संतोष नहीं करना चाहिए- त्रिषु नैव कर्तव्यः विद्यायां जप दानयोः अर्थात् विद्यार्जन में कभी संतोष नहीं करना चाहिए कि बस, बहुत ज्ञान (2). \_\_\_\_\_ कर लिया इसी तरह जप और दान करने में भी (3). \_\_\_\_\_ नहीं करना चाहिए। वैसे संतोष करने के लिए तो कहा गया है- जब आवे संतोष धन, सब धन धुरि समान। हमें जो प्राप्त हो उसमें ही संतोष करना चाहिए- 'साईं इतना दीजिए जामे कुटुंब समाय मैं भी भूखा न रहूँ, (4). \_\_\_\_\_ न भूखा जाए'। आज के मनुष्य की सांसारिकता में बढ़ती लिप्तता, वैश्विक बाज़ारवाद और भौतिकता की चकाचौंध के कारण संत्रास, कुंठा और असंतोष दिन-प्रतिदिन बढ़ता ही जा रहा है। इसी असंतोष को दूर करने के लिए संतोषी बनना (5). \_\_\_\_\_ हो गया है।

SubQuestion No : 17

Q.17 रिक्त स्थान (2) के लिए सर्वाधिक उपयुक्त शब्द इनमें से कौन सा होगा?

- Ans  1. दान  
 2. अर्जित  
 3. इकठ्ठा  
 4. प्रदान

Question ID : 26433092227

Status : Not Answered

Chosen Option : --

**Comprehension:**

प्रश्न संख्या 1-5 के उत्तर निम्न अवतरण के आधार पर दीजिए।  
भारतीय मनीषा ने जिस प्रकार संतोष करने के लिए हमें सीख दी है, उसी तरह (1). \_\_\_\_\_ करने के लिए भी कहा है। चाणक्य के अनुसार हमें इन तीन उपक्रमों में संतोष नहीं करना चाहिए- त्रिषु नैव कर्तव्यः विद्यायां जप दानयोः अर्थात् विद्यार्जन में कभी संतोष नहीं करना चाहिए कि बस, बहुत ज्ञान (2). \_\_\_\_\_ कर लिया इसी तरह जप और दान करने में भी (3). \_\_\_\_\_ नहीं करना चाहिए। वैसे संतोष करने के लिए तो कहा गया है- जब आवे संतोष धन, सब धन धुरि समान। हमें जो प्राप्त हो उसमें ही संतोष करना चाहिए- 'साई इतना दीजिए जामे कुटुंब समाय मैं भी भूखा न रहूँ, (4). \_\_\_\_\_ न भूखा जाए'। आज के मनुष्य की सांसारिकता में बढ़ती लिप्तता, वैश्विक बाजारवाद और भौतिकता की चकाचौंध के कारण संत्रास, कुंठा और असंतोष दिन-प्रतिदिन बढ़ता ही जा रहा है। इसी असंतोष को दूर करने के लिए संतोषी बनना (5). \_\_\_\_\_ हो गया है।

**SubQuestion No : 18**

Q.18 रिक्त स्थान (3) के लिए सर्वाधिक उपयुक्त शब्द इनमें से कौन सा होगा?

- Ans  1. अधिक  
 2. संतोष  
 3. कम  
 4. गुस्सा

Question ID : 26433092228

Status : Not Answered

Chosen Option : --

**Comprehension:**

प्रश्न संख्या 1-5 के उत्तर निम्न अवतरण के आधार पर दीजिए।  
भारतीय मनीषा ने जिस प्रकार संतोष करने के लिए हमें सीख दी है, उसी तरह (1). \_\_\_\_\_ करने के लिए भी कहा है। चाणक्य के अनुसार हमें इन तीन उपक्रमों में संतोष नहीं करना चाहिए- त्रिषु नैव कर्तव्यः विद्यायां जप दानयोः अर्थात् विद्यार्जन में कभी संतोष नहीं करना चाहिए कि बस, बहुत ज्ञान (2). \_\_\_\_\_ कर लिया इसी तरह जप और दान करने में भी (3). \_\_\_\_\_ नहीं करना चाहिए। वैसे संतोष करने के लिए तो कहा गया है- जब आवे संतोष धन, सब धन धुरि समान। हमें जो प्राप्त हो उसमें ही संतोष करना चाहिए- 'साई इतना दीजिए जामे कुटुंब समाय मैं भी भूखा न रहूँ, (4). \_\_\_\_\_ न भूखा जाए'। आज के मनुष्य की सांसारिकता में बढ़ती लिप्तता, वैश्विक बाजारवाद और भौतिकता की चकाचौंध के कारण संत्रास, कुंठा और असंतोष दिन-प्रतिदिन बढ़ता ही जा रहा है। इसी असंतोष को दूर करने के लिए संतोषी बनना (5). \_\_\_\_\_ हो गया है।

**SubQuestion No : 19**

Q.19 रिक्त स्थान (4) के लिए सर्वाधिक उपयुक्त शब्द इनमें से कौन सा होगा?

- Ans  1. शत्रु  
 2. राजा  
 3. मित्र  
 4. साधु

Question ID : 26433092229

Status : Not Answered

Chosen Option : --

**Comprehension:**

प्रश्न संख्या 1-5 के उत्तर निम्न अवतरण के आधार पर दीजिए।  
भारतीय मनीषा ने जिस प्रकार संतोष करने के लिए हमें सीख दी है, उसी तरह (1). \_\_\_\_\_ करने के लिए भी कहा है। चाणक्य के अनुसार हमें इन तीन उपक्रमों में संतोष नहीं करना चाहिए- त्रिषु नैव कर्तव्यः विद्यायां जप दानयोः अर्थात् विद्यार्जन में कभी संतोष नहीं करना चाहिए कि बस, बहुत ज्ञान (2). \_\_\_\_\_ कर लिया इसी तरह जप और दान करने में भी (3). \_\_\_\_\_ नहीं करना चाहिए। जैसे संतोष करने के लिए तो कहा गया है- जब आवे संतोष धन, सब धन धुरि समान। हमें जो प्राप्त हो उसमें ही संतोष करना चाहिए- 'सांई इतना दीजिए जामे कुटुंब समाय मैं भी भूखा न रहूँ, (4). \_\_\_\_\_ न भूखा जाए'। आज के मनुष्य की सांसारिकता में बढ़ती लिप्तता, वैश्विक बाज़ारवाद और भौतिकता की चकाचौंध के कारण संत्रास, कुंठा और असंतोष दिन-प्रतिदिन बढ़ता ही जा रहा है। इसी असंतोष को दूर करने के लिए संतोषी बनना (5). \_\_\_\_\_ हो गया है।

**SubQuestion No : 20**

Q.20 रिक्त स्थान (5) के लिए सर्वाधिक उपयुक्त शब्द इनमें से कौन सा होगा?

- Ans
- 1. कम
  - 2. अधिक
  - 3. नहीं
  - 4. आवश्यक

Question ID : 26433092230

Status : Not Answered

Chosen Option : --

KD Job Updates

# Constable GD in CAPFs SSF Rifleman GD in Assam Rifles and Sepoy in NCB Examination 2022

Roll Number	<b>KD Job Updates</b>
Candidate Name	<b>KD Job Updates</b>
Venue Name	iON Digital Zone iDZ 1 Sector 62
Exam Date	07/02/2023
Exam Time	2:30 PM - 3:30 PM
Subject	Constable GD Examination 2022

## Section : Part-A-General Intelligence and Reasoning

**Q.1** Select the number from among the given options that can replace the question mark (?) in the following series.  
73, 74, 66, 93, 29, ?

- Ans  1. 154  
 2. 146  
 3. 145  
 4. 164

Question ID : 26433078924  
Status : Answered  
Chosen Option : 1

**Q.2** Which letter-cluster will replace the question mark (?) to complete the given series?  
CMUZ, FOVB, ?, LSXF, OUYH

- Ans  1. JQWD  
 2. IQXD  
 3. JQXD  
 4. IQWD

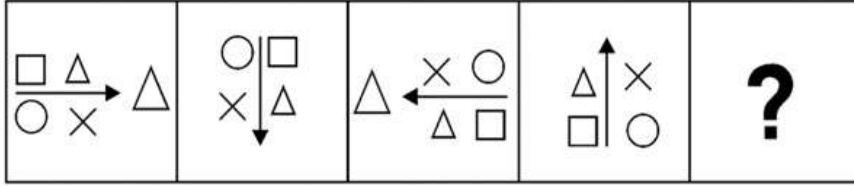
Question ID : 26433067949  
Status : Answered  
Chosen Option : 4

**Q.3** In a code language, 'sweet fruits' is coded as 're de', 'mango is sweet' is coded as 'de me ke', 'orange is citrus' is coded as 'ke le pe', 'eat orange' is coded as 'pe ne'. What is the code for the word 'eat'?

- Ans  1. ne  
 2. pe  
 3. re  
 4. de

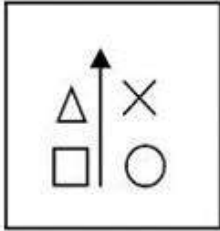
Question ID : 26433082267  
Status : Answered  
Chosen Option : 1

**Q.4** Select the figure from among the given options that can replace the question mark (?) in the following series.

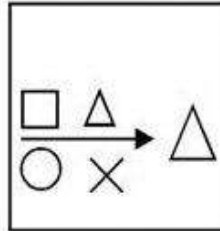


Ans

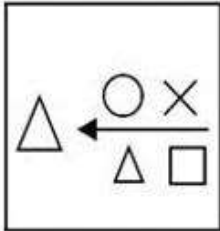
✗ 1.



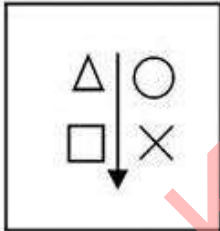
✓ 2.



✗ 3.



✗ 4.



Question ID : 26433080483

Status : Answered

Chosen Option : 2



Q.5 Select the correct mirror image of the given figure when the mirror is placed at MN as shown below.

k j 0 9 w n 2 f x



Ans

- 1. x † S m n e o j k
- 2. x † S n w e o j k
- 3. k j e n w o e j k
- 4. k j e n w e o j k

Question ID : 26433082335

Status : Answered

Chosen Option : 4

Q.6 Which of the mathematical signs should be interchanged in the below equation to make it mathematically correct?  
 $135 \div 15 \times 27 + 3 - 18 = 252$

- Ans
- 1. + and ×
  - 2. + and -
  - 3. ÷ and +
  - 4. + and -

Question ID : 264330117491

Status : Answered

Chosen Option : 3

Q.7 In a certain code language, 'MOVE' is written as 'NQWG' and 'RUST' is written as 'SWTV'. How will 'TASK' be written in that language?

- Ans
- 1. CUMU
  - 2. CUUM
  - 3. UCTM
  - 4. UCMU

Question ID : 26433068894

Status : Answered

Chosen Option : 3

**Q.8** Three Statements are given followed by Three conclusions numbered I, II and III. Assuming the statements to be true, even if they seem to be at variance with commonly known facts, decide which of the conclusions logically follow(s) from the statements.

**Statements:**

All apples are cake.

All cakes are bananas.

Some bananas are fruit.

**Conclusions:**

I. Some apples are cake.

II. Some bananas are apples.

III. Some fruits are bananas.

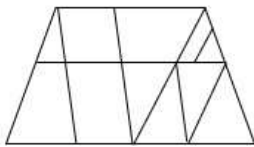
- Ans**
- 1. Both conclusions I and II follow.
  - 2. Both conclusions II and III follow.
  - 3. Both conclusions I and III follow.
  - 4. All conclusions follow.

Question ID : 26433081796

Status : Answered

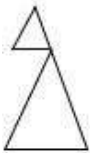
Chosen Option : 4

**Q.9** Select the option figure which is embedded in the given figure. (Rotation is NOT allowed)

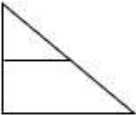


**Ans**

1.



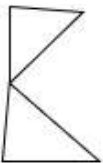
2.



3.



4.



Question ID : 26433069333

Status : Answered

Chosen Option : 1

Q.10 Which letter-cluster will replace the question mark (?) to complete the given series?  
LQOA, ?, LUOE, LWOG, LYOI

- Ans
- 1. LRMC
  - 2. CTPL
  - 3. LSOC
  - 4. CRML

Question ID : 26433068038  
Status : Answered  
Chosen Option : 3

Q.11 'Strength' is related to 'Weakness' in the same way as 'Courage' is related to  
'\_\_\_\_\_'.  
(The words must be considered as meaningful English words and must not be related  
to each other based on the number of letters/number of consonants/vowels in the  
word)

- Ans
- 1. Power
  - 2. Fight
  - 3. Bravery
  - 4. Cowardice

Question ID : 26433057749  
Status : Answered  
Chosen Option : 4

Q.12 'A + B' means 'B is the paternal grandfather of A'  
'A @ B' means 'B is the brother of A'  
'A % B' means 'B is the daughter of A'  
'A \$ B' means 'B is the husband of A'  
If A \$ B % C @ D + E, then how is E related to A?

- Ans
- 1. Father
  - 2. Son
  - 3. Brother
  - 4. Father in law

Question ID : 26433068531  
Status : Answered  
Chosen Option : 4

Q.13 Select the option that is related to the third word in the same way as the second word  
is related to the first word. (The words must be considered as meaningful English  
words and must not be related to each other based on the number of letters/number of  
consonants/vowels in the word.)  
Horse : Stable :: Birds : ?

- Ans
- 1. Hive
  - 2. Nest
  - 3. Sky
  - 4. Fly

Question ID : 26433069580  
Status : Answered  
Chosen Option : 2

Q.14 Seven people I, II, III, IV, V, VI, and VII are sitting around a circular table facing the centre. I and III are not sitting next to each other. VII is sitting between VI and IV. IV is sitting to the immediate left of I. Only II is sitting between V and III. Who is sitting between I and VII?

- Ans
- 1. II
  - 2. VI
  - 3. IV
  - 4. III

Question ID : 264330114208  
Status : Answered  
Chosen Option : 3

Q.15 Select the option that is related to the third number in the same way as the second number is related to the first number and the sixth number is related to the fifth number.

64 : 16 :: 169 : ? :: 256 : 32

- Ans
- 1. 24
  - 2. 30
  - 3. 28
  - 4. 26

Question ID : 26433067896  
Status : Answered  
Chosen Option : 4

Q.16 If A denotes  $\div$ , B denotes  $\times$ , C denotes  $+$  and D denotes  $-$ , then what will be the value of the following equation?  
24 B 12 A 8 C 10 D 6 =?

- Ans
- 1. 40
  - 2. 60
  - 3. 36
  - 4. 48

Question ID : 26433085654  
Status : Answered  
Chosen Option : 1

Q.17 Which option represents the correct order of the given words as they would appear in the English dictionary?

1. lantern
2. lavish
3. lament
4. latitude
5. lately

- Ans
- 1. 3,5,1,4,2
  - 2. 3,1,5,4,2
  - 3. 3,1,4,2,5
  - 4. 3,5,4,1,2

Question ID : 26433069308  
Status : Answered  
Chosen Option : 2

**Q.18** A teacher makes 10 kindergarten children sit in two parallel rows, such that five children are sitting in each row facing each other. Anu, Bobby, Lilly, Tom and Sudha sitting in Row 1 face north, while children Priya, Rama, Uma, Kala and Guna in Row 2 face the south direction. Lilly is facing the immediate neighbour of Guna. Tom sits third to the left of Sudha. Anu does not sit at the corners. Neither Priya nor Rama sits at the corner. Guna sits in the middle of the line. Only one child sits between Lilly and Tom. Kala sits at one of the corners but not facing Sudha. Priya sits to the right of Rama but not immediate. Which child is facing Tom?

- Ans
- 1. Kala
  - 2. Uma
  - 3. Guna
  - 4. Priya

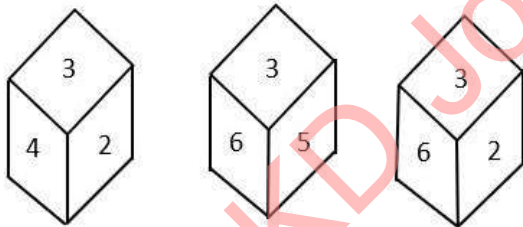
Question ID : 26433079067  
 Status : Answered  
 Chosen Option : 4

**Q.19** Which number will replace the question mark (?) in the following series?  
 57, 50, 64, ?, 71, 36

- Ans
- 1. 50
  - 2. 43
  - 3. 62
  - 4. 40

Question ID : 26433067841  
 Status : Answered  
 Chosen Option : 2

**Q.20** Three different positions of the same dice are shown. Find the number on the face opposite the face showing '3'.



- Ans
- 1. 2
  - 2. 4
  - 3. 5
  - 4. 1

Question ID : 26433090078  
 Status : Answered  
 Chosen Option : 4

**Q.1 Which of the following is a paddy crop?**

- Ans  1. rice  
 2. cotton  
 3. cucumber  
 4. jute

Question ID : 264330115525  
Status : Answered  
Chosen Option : 1

**Q.2 A budget document that relates to the assets and liabilities in the capital account of the government, is referred as:**

- Ans  1. zero budget  
 2. capital budget  
 3. revenue budget  
 4. long term budget

Question ID : 264330115278  
Status : Answered  
Chosen Option : 2

**Q.3 As of November 2022, who is the President of Bharatiya Janata Party, a political party in India?**

- Ans  1. Amit Shah  
 2. Narendra Modi  
 3. Jagat Prakash Nadda  
 4. Swatantra Dev Singh

Question ID : 264330114939  
Status : Answered  
Chosen Option : 3

**Q.4 From the following, which one is NOT the principle of Parliamentary Government of India?**

- Ans  1. Dissolution of the lower house  
 2. Clear division of power among Legislature, Executive and Judiciary  
 3. Majority party rule  
 4. Collective responsibility

Question ID : 26433090675  
Status : Answered  
Chosen Option : 1

**Q.5** The inscriptions of the Pallavas mention a number of local assemblies. These included the \_\_\_\_\_, which was an assembly of brahmin land owners.

- Ans**
- 1. naukayan
  - 2. sabha
  - 3. parishad
  - 4. bhraman

Question ID : 264330115457  
Status : Answered  
Chosen Option : 4

**Q.6** The bedrock of India's democracy is the rule of law and that means we have to have \_\_\_\_\_.

- Ans**
- 1. freedom of speech
  - 2. a written constitution
  - 3. an independent judiciary
  - 4. sovereignty of the Parliament

Question ID : 264330115613  
Status : Answered  
Chosen Option : 3

**Q.7** Which mountain range prevents the cold Siberian winds from entering India?

- Ans**
- 1. Himalayas
  - 2. Satpura Range
  - 3. Aravali Hills
  - 4. Western Ghats

Question ID : 264330115980  
Status : Answered  
Chosen Option : 1

**Q.8** Who has replaced Ajit Mohan as the new Indian head of Meta in November 2022?

- Ans**
- 1. Sandhya Devanathan
  - 2. Ankhi Das
  - 3. Abhijit Bose
  - 4. Rajiv Aggarwal

Question ID : 264330114981  
Status : Answered  
Chosen Option : 4

Q.9 Which among the following classical dance forms was originally known as Sadir Attam?

- Ans
- 1. Sattriya
  - 2. Bharatanatyam
  - 3. Manipuri
  - 4. Kuchipudi

Question ID : 264330115064  
Status : Answered  
Chosen Option : 1

Q.10 Economists have found that a poor nation can only progress only if they have good \_\_\_\_\_.

- Ans
- 1. Industrial Sector
  - 2. Agricultural sector
  - 3. Service Sector
  - 4. Private Sector

Question ID : 264330116143  
Status : Answered  
Chosen Option : 2

Q.11 Who among the following was awarded the TTK Memorial Award by Madras Music Academy?

- Ans
- 1. Mahaboob Subhani
  - 2. Uday Shankar
  - 3. Pandit Birju Maharaj
  - 4. Vempati Chinna Satyam

Question ID : 264330115848  
Status : Not Answered  
Chosen Option : --

Q.12 SAMADHAN portal allows online registration with the intent to make justice for workmen simple and quick. Industrial dispute is raised before \_\_\_\_\_ of the area.

- Ans
- 1. Block Development Officer
  - 2. Custom Officer
  - 3. Conciliation Officer
  - 4. Circle Inspector

Question ID : 264330116194  
Status : Not Answered  
Chosen Option : --



Q.13 Which of these is a micronutrient?

- Ans  1. iron  
 2. carbohydrates  
 3. fibre  
 4. water

Question ID : 264330115231  
Status : Answered  
Chosen Option : 3

Q.14 What was the female literacy rate of India as per the Census 2011?

- Ans  1. 67.78%  
 2. 65.46%  
 3. 69.89%  
 4. 63.52%

Question ID : 264330116057  
Status : Answered  
Chosen Option : 2

Q.15 What are the products formed when lead reacts with copper chloride?

- Ans  1. Copper oxide and lead chloride  
 2. Lead oxide and copper hydroxide  
 3. Lead oxide and copper  
 4. Lead chloride and copper

Question ID : 26433087844  
Status : Answered  
Chosen Option : 2

Q.16 The people of Kashmir dedicates the Navreh festival to Goddess \_\_\_\_\_ and pay homage to her during the festival.

- Ans  1. Sita  
 2. Parvati  
 3. Sharika  
 4. Lakshmi

Question ID : 264330115115  
Status : Not Answered  
Chosen Option : --

Q.17 Mirabai Chanu belongs to which of the following state of India?

- Ans  1. Tripura  
 2. Manipur  
 3. Nagaland  
 4. Assam

Question ID : 264330116262  
Status : Answered  
Chosen Option : 2

Q.18 With which country did India had a war in the region of the McMahon line in 1962?

- Ans  1. China  
 2. Bhutan  
 3. Pakistan  
 4. Nepal

Question ID : 264330115687  
Status : Answered  
Chosen Option : 1

Q.19 Who hosted the 2011 cricket world cup?

- Ans  1. India  
 2. India, Sri Lanka, Bangladesh  
 3. Australia  
 4. Sri Lanka, Bangladesh only

Question ID : 264330115955  
Status : Answered  
Chosen Option : 1

Q.20 Aluminium smelting is the \_\_\_\_\_ most important metallurgical industry in India.

- Ans  1. fourth  
 2. third  
 3. second  
 4. first

Question ID : 264330115403  
Status : Answered  
Chosen Option : 3

Section : Part-C-Elementary Mathematics

Q.1 Find the third proportional to 24 and 12.

- Ans  1. 9  
 2. 7  
 3. 6  
 4. 5

Question ID : 26433080031  
Status : Answered  
Chosen Option : 3

Q.2 If p and q are two single digit natural numbers of a number 728pq such that it is divisible by 80, then p×q is equal to:

- Ans
- 1. 5
  - 2. 10
  - 3. 0
  - 4. 15

Question ID : 26433080239  
Status : Answered  
Chosen Option : 3

Q.3 The two numbers are in the ratio 2:3. If eight is added to each of the numbers, then their ratio changed to 8:11. What are the two numbers?

- Ans
- 1. 12 and 18
  - 2. 36 and 54
  - 3. 24 and 36
  - 4. 18 and 27

Question ID : 26433075667  
Status : Answered  
Chosen Option : 3

Q.4 If the total surface area of a solid right circular cylinder is  $1100 \text{ cm}^2$  and its radius is 7 cm, then find its curved surface area. (Use  $\pi = \frac{22}{7}$ )

- Ans
- 1.  $792 \text{ cm}^2$
  - 2.  $562 \text{ cm}^2$
  - 3.  $930 \text{ cm}^2$
  - 4.  $840 \text{ cm}^2$

Question ID : 26433080073  
Status : Answered  
Chosen Option : 1

Q.5 The height and the radius of a cone are 21 cm and  $7\sqrt{7}$  cm, respectively. Find the volume of the cone (take  $\pi = \frac{22}{7}$ ).

- Ans
- 1.  $6,982 \text{ cm}^3$
  - 2.  $7,546 \text{ cm}^3$
  - 3.  $7,634 \text{ cm}^3$
  - 4.  $6,724 \text{ cm}^3$

Question ID : 26433076115  
Status : Answered  
Chosen Option : 2

**Q.6** Akash can do a piece of work in 74 days. Vishal can do this work in 37 days. Akash started the work alone. After how many days should Vishal join him, so that the total work is finished in 40 days?

- Ans
- 1. 19 days
  - 2. 25 days
  - 3. 16 days
  - 4. 23 days

Question ID : 264330116878  
Status : Answered  
Chosen Option : 4

**Q.7** Rani goes to school from home at a speed of 30 km/h and returns to home at the speed of 20 km/h. If the distance between her home and school is 8 km, then what is the average speed of the whole journey?

- Ans
- 1. 22 km/h
  - 2. 28 km/h
  - 3. 26 km/h
  - 4. 24 km/h

Question ID : 26433075643  
Status : Answered  
Chosen Option : 4

**Q.8** Samir purchased 20 dozens of toys at the rate of Rs.372 per dozen. He sold each one of them at the rate of Rs.32. What was his percentage profit?

- Ans
- 1. 4.2%
  - 2. 2.2%
  - 3. 3.6%
  - 4. 3.2%

Question ID : 26433075232  
Status : Answered  
Chosen Option : 4

**Q.9** A company employed 200 workers to complete a certain work in 150 days. In 50 days, only one-fourth of the work was completed. In order to complete the entire work in time, how many additional workers need to be employed?

- Ans
- 1. 150
  - 2. 100
  - 3. 50
  - 4. 75

Question ID : 26433075988  
Status : Answered  
Chosen Option : 2

Q.10 The population of a town increased by 10% in the first year and decreased by 10% in the second year. If the population at the end of the second year is 990000, then find the population at the beginning of the first year.

- Ans
- 1. 12,00,000
  - 2. 10,00,000
  - 3. 13,00,000
  - 4. 15,00,000

Question ID : 26433082723  
Status : Answered  
Chosen Option : 2

Q.11 On a winter's day, the average temperature during the day time is 34°C. At night the temperature falls to 8°C. What is the percent decrease?

- Ans
- 1. 26 percent
  - 2. 76.47 percent
  - 3. 84.68 percent
  - 4. 42 percent

Question ID : 264330116798  
Status : Answered  
Chosen Option : 2

Q.12 A person travels in a car for 450 km at an average speed of 30 km/h, then 360 km at 40 km/h and finally reaches to the destination by travelling 150 km at a speed of 50 km/h. Determine the average speed during the whole journey.

- Ans
- 1.  $\frac{320}{9}$  km/h
  - 2.  $\frac{370}{9}$  km/h
  - 3.  $\frac{340}{9}$  km/h
  - 4.  $\frac{310}{9}$  km/h

Question ID : 26433074302  
Status : Answered  
Chosen Option : 1

Q.13 Find the discount, if the marked price of book is Rs.5000 and sold it for Rs. 4000.

- Ans
- 1. Rs. 1100
  - 2. Rs. 1500
  - 3. Rs. 1200
  - 4. Rs. 1000

Question ID : 264330116717  
Status : Answered  
Chosen Option : 4

**Q.14** If the difference between the compound and simple interest on a certain sum of money for three years at 8% per annum is Rs.61.60, then find the sum.

- Ans
- 1. Rs.2,125
  - 2. Rs.5,050
  - 3. Rs.4,050
  - 4. Rs.3,125

Question ID : 26433064993  
Status : Answered  
Chosen Option : 4

**Q.15** Find the average of the square of the following numbers:  
5, 8, 9, 12, 15 and 16.

- Ans
- 1. 130.50
  - 2. 132.50
  - 3. 131.75
  - 4. 131.25

Question ID : 264330116685  
Status : Answered  
Chosen Option : 2

**Q.16** What will be the sum of HCF and LCM of 12 and 16?

- Ans
- 1. 56
  - 2. 44
  - 3. 52
  - 4. 48

Question ID : 264330116656  
Status : Answered  
Chosen Option : 3

**Q.17** There was a discount of 10 percent on sling bags. Mayuri bought a sling bag and got a 5 percent extra discount for paying cash. She paid Rs. 2565. What was the price tag on the sling bag?

- Ans
- 1. Rs. 3400
  - 2. Rs. 2000
  - 3. Rs. 2800
  - 4. Rs. 3000

Question ID : 264330116763  
Status : Answered  
Chosen Option : 4

Q.18 Suresh sold his mobile phone to Mohan for ₹29,700 at a gain of 10%. What was the cost price of the phone for Suresh?

- Ans
- 1. ₹25,000
  - 2. ₹26,000
  - 3. ₹28,000
  - 4. ₹27,000

Question ID : 26433074564  
Status : Answered  
Chosen Option : 4

Q.19 The price of sugar is decreased by 5%. If a family wants to keep their expenses on sugar, the same as earlier, then the family will have to increase the consumption of sugar by:

- Ans
- 1.  $5\frac{5}{19}\%$
  - 2.  $5\frac{2}{19}\%$
  - 3.  $5\frac{4}{19}\%$
  - 4. 5%

Question ID : 26433074954  
Status : Answered  
Chosen Option : 1

Q.20 The wheel of an engine is  $3\frac{3}{4}$  m in circumference and makes 4 revolutions in 2 seconds. How much distance (in km) will this train travel in 2 hours?

- Ans
- 1. 54 km
  - 2. 70 km
  - 3. 62 km
  - 4. 50 km

Question ID : 26433076043  
Status : Answered  
Chosen Option : 1

Section : Part-D-English

Q.1 Select the most appropriate ANTONYM of the underlined word in the following sentence.

The robbers were captured and brought to the jail.

- Ans
- 1. Composed
  - 2. Destroyed
  - 3. Released
  - 4. Seized

Question ID : 26433072239  
Status : Answered  
Chosen Option : 3

Q.2 Select the most appropriate option to fill in the blank.

She needs to be \_\_\_\_\_ if she wants to stand up to her bullies.

- Ans
- 1. bolder
  - 2. blonder
  - 3. balder
  - 4. boulder

Question ID : 26433084619  
Status : Answered  
Chosen Option : 2

Q.3 Select the most appropriate option to fill in the blank.

A couple of parrots \_\_\_\_\_ on the telephone wires.

- Ans
- 1. perched
  - 2. flew
  - 3. seeded
  - 4. waited

Question ID : 26433060334  
Status : Answered  
Chosen Option : 2

Q.4 Select the most appropriate meaning of the underlined idiom in the given sentence.

The child made a wry face when he was denied entry into the museum.

- Ans
- 1. An obscene gesture
  - 2. An earnest request
  - 3. A disappointed look
  - 4. An offending remark

Question ID : 26433072063  
Status : Answered  
Chosen Option : 3

Q.5 Select the most appropriate ANTONYM of the given word.

Tasty

- Ans
- 1. Supreme
  - 2. Hollow
  - 3. Transient
  - 4. Insipid

Question ID : 26433074382  
Status : Answered  
Chosen Option : 4



**Q.6** Select the most appropriate option to fill in the blank.

A feeling comes over one that so much evil and misfortune \_\_\_\_\_ the world that a little more or less does not make much difference.

- Ans
- 1. had shadowed
  - 2. shadowing
  - 3. shadowed
  - 4. shadow

Question ID : 26433092113  
Status : Answered  
Chosen Option : 4

**Q.7** Select the most appropriate synonym of the given word.

**Baffle**

- Ans
- 1. Perceive
  - 2. Confuse
  - 3. Betray
  - 4. Convince

Question ID : 26433088996  
Status : Answered  
Chosen Option : 2

**Q.8** Select the most appropriate meaning of the given idiom.  
**Be in seventh heaven**

- Ans
- 1. To be extremely happy
  - 2. To support someone strongly
  - 3. To be prepared for trouble
  - 4. To be impossible to understand

Question ID : 26433086429  
Status : Answered  
Chosen Option : 1

**Q.9** Select the most appropriate option that can substitute the underlined segment in the given sentence.

The doctors always wear a right and suitable uniform.

- Ans
- 1. virtuous
  - 2. decent
  - 3. nice
  - 4. fit

Question ID : 26433086463  
Status : Answered  
Chosen Option : 1

Q.10 Select the INCORRECTLY spelt word.

- Ans  1. Defroded  
 2. Discrimination  
 3. Continuation  
 4. Maintenance

Question ID : 26433073880  
Status : Answered  
Chosen Option : 1

Q.11 Select the option that expresses the given sentence in past perfect tense.

- A. Fortunately, the movie had not been starting on time.  
B. Fortunately, the movie was not starting on time.  
C. Fortunately, the movie had not started on time.  
D. Fortunately, the movie did not start on time.

- Ans  1. C  
 2. B  
 3. D  
 4. A

Question ID : 26433073518  
Status : Answered  
Chosen Option : 1

Q.12 Select the most appropriate option to substitute the underlined segment in the given sentence.

He asked me if I have anything to say.

- Ans  1. if I want anything  
 2. if I am having anything  
 3. if I had anything  
 4. if I has anything

Question ID : 26433093473  
Status : Answered  
Chosen Option : 3

Q.13 Select the most appropriate ANTONYM of the given word.

Officious

- Ans  1. Obtrusive  
 2. Legal  
 3. Imperial  
 4. Timid

Question ID : 26433072417  
Status : Not Answered  
Chosen Option : --

**Q.14 Select the INCORRECTLY spelt word.**

- Ans  1. Calendar  
 2. Acclaim  
 3. Conveince  
 4. Opportunity

Question ID : 26433072365  
Status : Answered  
Chosen Option : 3

**Q.15 Select the most appropriate synonym of the given word.**

**Accomplish**

- Ans  1. Approve  
 2. Fail  
 3. Achieve  
 4. Disappoint

Question ID : 26433074042  
Status : Answered  
Chosen Option : 3

**Comprehension:**

In the following passage, some words have been deleted. Read the passage carefully and select the most appropriate option to fill in each blank.

Twenty five years ago, few people realised that computers (1)\_\_\_\_\_ about to become part of our daily lives. This short period of time has seen (2)\_\_\_\_\_ changes, in business, education and public administration. Jobs which took weeks to complete in the past are now carried out in minutes. People who spent all day copying and checking calculations are now freed from these (3)\_\_\_\_\_ tasks. Students have become as familiar with hardware and software as their parents were with pencils and exercise books.

Computerisation of public records has enabled government departments to analyse the needs of citizens in detail. Some of us may wonder, (4)\_\_\_\_\_, life has really improved as a result of these changes. Many jobs disappeared, for example, when intelligent machines took over the work. Employers complain that clerical (5)\_\_\_\_\_ have become dependent on calculators and cannot do simple arithmetic.

**SubQuestion No : 16**

**Q.16 Select the most appropriate option to fill in blank 1.**

- Ans  1. be  
 2. were  
 3. is  
 4. was

Question ID : 26433089079  
Status : Answered  
Chosen Option : 2

**Comprehension:**

In the following passage, some words have been deleted. Read the passage carefully and select the most appropriate option to fill in each blank.

Twenty five years ago, few people realised that computers (1)\_\_\_\_\_ about to become part of our daily lives. This short period of time has seen (2)\_\_\_\_\_ changes, in business, education and public administration. Jobs which took weeks to complete in the past are now carried out in minutes. People who spent all day copying and checking calculations are now freed from these (3)\_\_\_\_\_ tasks. Students have become as familiar with hardware and software as their parents were with pencils and exercise books. Computerisation of public records has enabled government departments to analyse the needs of citizens in detail. Some of us may wonder, (4)\_\_\_\_\_, life has really improved as a result of these changes. Many jobs disappeared, for example, when intelligent machines took over the work. Employers complain that clerical (5)\_\_\_\_\_ have become dependent on calculators and cannot do simple arithmetic.

**SubQuestion No : 17**

**Q.17 Select the most appropriate option to fill in blank 2.**

- Ans  1. enormous  
 2. hazardous  
 3. indigenous  
 4. anonymous

Question ID : 26433089080

Status : Answered

Chosen Option : 1

**Comprehension:**

In the following passage, some words have been deleted. Read the passage carefully and select the most appropriate option to fill in each blank.

Twenty five years ago, few people realised that computers (1)\_\_\_\_\_ about to become part of our daily lives. This short period of time has seen (2)\_\_\_\_\_ changes, in business, education and public administration. Jobs which took weeks to complete in the past are now carried out in minutes. People who spent all day copying and checking calculations are now freed from these (3)\_\_\_\_\_ tasks. Students have become as familiar with hardware and software as their parents were with pencils and exercise books. Computerisation of public records has enabled government departments to analyse the needs of citizens in detail. Some of us may wonder, (4)\_\_\_\_\_, life has really improved as a result of these changes. Many jobs disappeared, for example, when intelligent machines took over the work. Employers complain that clerical (5)\_\_\_\_\_ have become dependent on calculators and cannot do simple arithmetic.

**SubQuestion No : 18**

**Q.18 Select the most appropriate option to fill in blank 3.**

- Ans  1. boring  
 2. bored  
 3. bore  
 4. bores

Question ID : 26433089081

Status : Answered

Chosen Option : 1

**Comprehension:**

In the following passage, some words have been deleted. Read the passage carefully and select the most appropriate option to fill in each blank.

Twenty five years ago, few people realised that computers (1)\_\_\_\_\_ about to become part of our daily lives. This short period of time has seen (2)\_\_\_\_\_ changes, in business, education and public administration. Jobs which took weeks to complete in the past are now carried out in minutes. People who spent all day copying and checking calculations are now freed from these (3)\_\_\_\_\_ tasks. Students have become as familiar with hardware and software as their parents were with pencils and exercise books. Computerisation of public records has enabled government departments to analyse the needs of citizens in detail. Some of us may wonder, (4)\_\_\_\_\_, life has really improved as a result of these changes. Many jobs disappeared, for example, when intelligent machines took over the work. Employers complain that clerical (5)\_\_\_\_\_ have become dependent on calculators and cannot do simple arithmetic.

**SubQuestion No : 19**

**Q.19 Select the most appropriate option to fill in blank 4.**

- Ans  1. subsequently  
 2. however  
 3. therefore  
 4. for instance

Question ID : 26433089082

Status : Answered

Chosen Option : 1

**Comprehension:**

In the following passage, some words have been deleted. Read the passage carefully and select the most appropriate option to fill in each blank.

Twenty five years ago, few people realised that computers (1)\_\_\_\_\_ about to become part of our daily lives. This short period of time has seen (2)\_\_\_\_\_ changes, in business, education and public administration. Jobs which took weeks to complete in the past are now carried out in minutes. People who spent all day copying and checking calculations are now freed from these (3)\_\_\_\_\_ tasks. Students have become as familiar with hardware and software as their parents were with pencils and exercise books. Computerisation of public records has enabled government departments to analyse the needs of citizens in detail. Some of us may wonder, (4)\_\_\_\_\_, life has really improved as a result of these changes. Many jobs disappeared, for example, when intelligent machines took over the work. Employers complain that clerical (5)\_\_\_\_\_ have become dependent on calculators and cannot do simple arithmetic.

**SubQuestion No : 20**

**Q.20 Select the most appropriate option to fill in blank 5.**

- Ans  1. staff  
 2. soldiers  
 3. messengers  
 4. religions

Question ID : 26433089083

Status : Answered

Chosen Option : 1

Q.1 निम्नलिखित में से शुद्ध वर्तनी वाला शब्द कौन-सा है?

- Ans
- 1. ईतवार
  - 2. ईटवार
  - 3. एतवार
  - 4. इतवार

Question ID : 26433066749  
Status : Not Answered  
Chosen Option : --

Q.2 विकल्पों में से शुद्ध वर्तनी वाले वाक्य का चयन कीजिए।

- Ans
- 1. फ़िज़ूल खर्च मत करो।
  - 2. मीरा आटा गुँध रही है।
  - 3. सुधा नीरपराध है।
  - 4. शत्रु युद्धभूमी से दौड़ गया।

Question ID : 26433079234  
Status : Not Answered  
Chosen Option : --

Q.3 'सकाम' शब्द का सही विलोम शब्द क्या होगा?

- Ans
- 1. कुकाम
  - 2. निकाम
  - 3. दुर्काम
  - 4. निष्काम

Question ID : 26433067093  
Status : Not Answered  
Chosen Option : --

Q.4 निम्न वाक्य में रेखांकित अंश के स्थान पर सबसे उपयुक्त विकल्प का चयन कीजिए।  
उसने पुरस्कार का अपमान कर दिया।

- Ans
- 1. आपमान
  - 2. तिरस्कार
  - 3. बेइज्जत
  - 4. समापन

Question ID : 26433066870  
Status : Not Answered  
Chosen Option : --

Q.5 निम्न में से 'अग्नि' का पर्याय है-

- Ans  1. अनल  
 2. अम्बक  
 3. अमिय  
 4. अनिल

Question ID : 26433062912  
Status : Not Answered  
Chosen Option : --

Q.6 'खून पसीना एक करना' मुहावरे का उचित अर्थ है-

- Ans  1. परिश्रम न करना  
 2. कठिन परिश्रम करना  
 3. कुछ न समझना  
 4. लड़ाई करना

Question ID : 26433065881  
Status : Not Answered  
Chosen Option : --

Q.7 निम्नलिखित मुहावरे के लिए उपयुक्त सार्थक शब्द क्या होगा?  
आंख की किरकिरी होना

- Ans  1. आंखों में कुछ चला जाना  
 2. अप्रिय लगना  
 3. व्यर्थ का काम करना  
 4. बहुत अधिक प्रिय होना

Question ID : 26433065780  
Status : Not Answered  
Chosen Option : --

Q.8 'जो वर्ष में एक बार होता हो' वाक्यांश के लिए सार्थक शब्द है-

- Ans  1. एक वर्ष  
 2. वार्षिक  
 3. वर्षा  
 4. भीषण

Question ID : 26433062226  
Status : Not Answered  
Chosen Option : --

Q.9 'गाँव से संबंधित' वाक्यांश के लिए इनमें से उपयुक्त शब्द कौन-सा है?

- Ans  1. ग्रामीण  
 2. देशी  
 3. शहरी  
 4. गायक

Question ID : 26433066889  
Status : Not Answered  
Chosen Option : --

Q.10 'भीष्म पितामह ने अविवाहित रहने का प्रण लिया था।'  
उपरोक्त वाक्य में प्रयुक्त शब्द 'प्रण' के पर्यायवाची शब्द का चयन विकल्पों में से कीजिए।

- Ans  1. कटक  
 2. प्रतिज्ञा  
 3. व्रत  
 4. संकल्प

Question ID : 26433069739  
Status : Not Answered  
Chosen Option : --

Q.11 जो सुगमता से साधा जाए  
ऊपर दिए गए वाक्यांश के लिए एक शब्द क्या होगा?

- Ans  1. दुर्गम्य  
 2. सुसाध्य  
 3. सुगम्य  
 4. दुःसाध्य

Question ID : 26433070061  
Status : Not Answered  
Chosen Option : --

Q.12 "निरंजन ड्राइवर को कार चलवाता है।"  
उपरोक्त वाक्य में कारक सम्बन्धी त्रुटि पहचानकर निम्नलिखित में से शुद्ध वाक्य का चयन कीजिए।

- Ans  1. निरंजन ड्राइवर की कार चलवाता है।  
 2. निरंजन ड्राइवर से कार चलवाता है।  
 3. निरंजन ड्राइवर पर कार चलवाता है।  
 4. निरंजन ड्राइवर के लिए कार चलवाता है।

Question ID : 26433066963  
Status : Not Answered  
Chosen Option : --



Q.13 निम्न वाक्य में रेखांकित शब्द को विकल्पों में दिए गए शब्दों में से उचित शब्द से बदलें।  
मुझे आशंका है कि वह इतना काम कर सकेगा या नहीं।

- Ans
- 1. भय
  - 2. खेद
  - 3. शंका
  - 4. अदेशा

Question ID : 26433062875  
Status : Not Answered  
Chosen Option : --

Q.14 निम्नलिखित विकल्पों में से किस एक वाक्य में संख्यावाचक विशेषण का उचित प्रयोग नहीं किया गया है?

- Ans
- 1. राम ने दो मीटर कपड़ा खरीदा।
  - 2. हमें चन्द्रमा सुन्दर प्रतीत होता है।
  - 3. मेरी आठ बीघा जमीन ननिहाल में है।
  - 4. सौ ग्राम धनिया की कीमत क्या है?

Question ID : 26433062968  
Status : Not Answered  
Chosen Option : --

Q.15 निम्न वाक्य में रेखांकित शब्द के उपयुक्त विलोम शब्द द्वारा रिक्त स्थान की पूर्ति कीजिए।  
कभी कभी परिस्थितियाँ मनुष्य को आस्तिक से \_\_\_\_\_ बना देती हैं।

- Ans
- 1. धार्मिक
  - 2. तार्किक
  - 3. आत्यंतिक
  - 4. नास्तिक

Question ID : 26433072618  
Status : Not Answered  
Chosen Option : --

#### Comprehension:

निम्नलिखित गद्यांश में कुछ शब्दों को हटा दिया गया है। दिए गए विकल्पों की सहायता से रिक्त स्थानों की पूर्ति कीजिए। प्रत्येक संख्या के लिए सबसे उपयुक्त विकल्प का चयन कीजिए।  
आजकल देखा जाता है कि लोगों में त्योहारों को मनाने की 1. \_\_\_\_\_ कम होती जा रही है। पुराने उत्साह और आस्था का अभाव 2. \_\_\_\_\_ दिखाई देता है। जहाँ त्योहार मनाए भी जाते हैं उनके पीछे अन्य 3. \_\_\_\_\_ होते हैं। त्योहार मनाने के लिए समय और धन दोनों की 4. \_\_\_\_\_ होती है। जीवन में प्रतिस्पर्धा बढ़ गई है। सब बातों के केंद्र में 5. \_\_\_\_\_ आ गया है।

#### SubQuestion No : 16

Q.16 रिक्त स्थान 1 की पूर्ति के लिए सबसे उपयुक्त विकल्प का चयन कीजिए।

- Ans
- 1. कार्य
  - 2. सपना
  - 3. प्रवृत्ति
  - 4. उक्ति

Question ID : 264330111131  
Status : Not Answered  
Chosen Option : --

**Comprehension:**

निम्नलिखित गद्यांश में कुछ शब्दों को हटा दिया गया है। दिए गए विकल्पों की सहायता से रिक्त स्थानों की पूर्ति कीजिए। प्रत्येक संख्या के लिए सबसे उपयुक्त विकल्प का चयन कीजिए।  
आजकल देखा जाता है कि लोगों में त्योहारों को मनाने की 1. \_\_\_\_\_ कम होती जा रही है। पुराने उत्साह और आस्था का अभाव 2. \_\_\_\_\_ दिखाई देता है। जहाँ त्योहार मनाए भी जाते हैं उनके पीछे अन्य 3. \_\_\_\_\_ होते हैं। त्योहार मनाने के लिए समय और धन दोनों की 4. \_\_\_\_\_ होती है। जीवन में प्रतिस्पर्धा बढ़ गई है। सब बातों के केंद्र में 5. \_\_\_\_\_ आ गया है।

**SubQuestion No : 17**

Q.17 रिक्त स्थान 2 की पूर्ति के लिए सबसे उपयुक्त विकल्प का चयन कीजिए।

- Ans  1. सर्वत्र  
 2. जग  
 3. अछूता  
 4. कम

Question ID : 264330111132

Status : Not Answered

Chosen Option : --

**Comprehension:**

निम्नलिखित गद्यांश में कुछ शब्दों को हटा दिया गया है। दिए गए विकल्पों की सहायता से रिक्त स्थानों की पूर्ति कीजिए। प्रत्येक संख्या के लिए सबसे उपयुक्त विकल्प का चयन कीजिए।  
आजकल देखा जाता है कि लोगों में त्योहारों को मनाने की 1. \_\_\_\_\_ कम होती जा रही है। पुराने उत्साह और आस्था का अभाव 2. \_\_\_\_\_ दिखाई देता है। जहाँ त्योहार मनाए भी जाते हैं उनके पीछे अन्य 3. \_\_\_\_\_ होते हैं। त्योहार मनाने के लिए समय और धन दोनों की 4. \_\_\_\_\_ होती है। जीवन में प्रतिस्पर्धा बढ़ गई है। सब बातों के केंद्र में 5. \_\_\_\_\_ आ गया है।

**SubQuestion No : 18**

Q.18 रिक्त स्थान 3 की पूर्ति के लिए सबसे उपयुक्त विकल्प का चयन कीजिए।

- Ans  1. त्योहार  
 2. कारण  
 3. गुण  
 4. आसान

Question ID : 264330111133

Status : Not Answered

Chosen Option : --

**Comprehension:**

निम्नलिखित गद्यांश में कुछ शब्दों को हटा दिया गया है। दिए गए विकल्पों की सहायता से रिक्त स्थानों की पूर्ति कीजिए। प्रत्येक संख्या के लिए सबसे उपयुक्त विकल्प का चयन कीजिए।  
आजकल देखा जाता है कि लोगों में त्योहारों को मनाने की 1. \_\_\_\_\_ कम होती जा रही है। पुराने उत्साह और आस्था का अभाव 2. \_\_\_\_\_ दिखाई देता है। जहाँ त्योहार मनाए भी जाते हैं उनके पीछे अन्य 3. \_\_\_\_\_ होते हैं। त्योहार मनाने के लिए समय और धन दोनों की 4. \_\_\_\_\_ होती है। जीवन में प्रतिस्पर्धा बढ़ गई है। सब बातों के केंद्र में 5. \_\_\_\_\_ आ गया है।

**SubQuestion No : 19**

Q.19 रिक्त स्थान 4 की पूर्ति के लिए सबसे उपयुक्त विकल्प का चयन कीजिए।

- Ans  1. अनावश्यकता  
 2. आवश्यकता  
 3. समझ  
 4. बढ़ाव

Question ID : 264330111134

Status : Not Answered

Chosen Option : --

**Comprehension:**

निम्नलिखित गद्यांश में कुछ शब्दों को हटा दिया गया है। दिए गए विकल्पों की सहायता से रिक्त स्थानों की पूर्ति कीजिए। प्रत्येक संख्या के लिए सबसे उपयुक्त विकल्प का चयन कीजिए।  
आजकल देखा जाता है कि लोगों में त्योहारों को मनाने की 1. \_\_\_\_\_ कम होती जा रही है। पुराने उत्साह और आस्था का अभाव 2. \_\_\_\_\_ दिखाई देता है। जहाँ त्योहार मनाए भी जाते हैं उनके पीछे अन्य 3. \_\_\_\_\_ होते हैं। त्योहार मनाने के लिए समय और धन दोनों की 4. \_\_\_\_\_ होती है। जीवन में प्रतिस्पर्धा बढ़ गई है। सब बातों के केंद्र में 5. \_\_\_\_\_ आ गया है।

**SubQuestion No : 20**

Q.20 रिक्त स्थान 5 की पूर्ति के लिए सबसे उपयुक्त विकल्प का चयन कीजिए।

- Ans  1. परिवार  
 2. प्यार  
 3. झगड़ा  
 4. धन

Question ID : 264330111135

Status : Not Answered

Chosen Option : --

# Constable GD in CAPFs SSF Rifleman GD in Assam Rifles and Sepoy in NCB Examination 2022

Roll Number	KD Job Updates
Candidate Name	KD Job Updates
Venue Name	TCS Gito Bitan
Exam Date	07/02/2023
Exam Time	5:15 PM - 6:15 PM
Subject	Constable GD Examination 2022

Section : Part-A-General Intelligence and Reasoning

Q.1 Which of the following numbers will replace the question marks (?) in the given series?  
1, 9, 25, 49, ?, ?, 169, 225, 289

- Ans
- 1. 64, 81
  - 2. 100, 121
  - 3. 81, 121
  - 4. 81, 100

Question ID : 26433069051  
Status : Answered  
Chosen Option : 3

Q.2 Select the letter-cluster from among the given options that can replace the question mark (?) in the following series.  
GTNS, OPVA, WLDI, ? , MDTY

- Ans
- 1. EHLQ
  - 2. JUFV
  - 3. JKDF
  - 4. EKWS

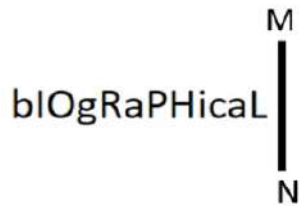
Question ID : 26433074742  
Status : Answered  
Chosen Option : 1

Q.3 'A @ B' means 'A is the wife of B'  
'A & B' means 'A is the father of B'  
'A # B' means 'A is the sister of B'  
Which of the following options means 'P is the mother of L'?

- Ans
- 1. S @ L & R # P
  - 2. P @ R & S # L
  - 3. P @ L & S # R
  - 4. S @ P # R & L

Question ID : 26433069657  
Status : Not Answered  
Chosen Option : --

Q.4 Select the correct mirror image of the given figure when the mirror is placed at MN as shown below.



Ans

- 1. 
- 2. 
- 3. 
- 4. 

Question ID : 26433085558

Status : Answered

Chosen Option : 4

Q.5 Select the option that is related to the third word in the same way as the second word is related to the first word. (The words must be considered as meaningful English words and must not be related to each other based on the number of letters/number of consonants/vowels in the word.)

Arc : Circle :: Cockpit : ?

- Ans
- 1. Airplane
  - 2. Wheel
  - 3. Car
  - 4. Bike

Question ID : 26433067367

Status : Answered

Chosen Option : 1

Q.6 Which option represents the correct order of the given words as they would appear in the English dictionary?

1. Chair
2. Charm
3. Chauffer
4. Chain
5. Change

- Ans
- 1. 4,1,5,2,3
  - 2. 4,1,5,3,2
  - 3. 4,5,1,3,2
  - 4. 4,1,2,5,3

Question ID : 26433069273

Status : Answered

Chosen Option : 1

Q.7 Which of the following numbers will replace the question mark (?) in the given series?  
81, 88, 102, ?, 151, 186

- Ans
- 1. 116
  - 2. 109
  - 3. 123
  - 4. 137

Question ID : 26433069386  
Status : Answered  
Chosen Option : 3

Q.8 Which of the following letter-clusters will replace the question mark (?) and complete the following letter-cluster series?  
UH, SD, OZ, MV, ?

- Ans
- 1. IQ
  - 2. IR
  - 3. IS
  - 4. HR

Question ID : 26433067287  
Status : Answered  
Chosen Option : 2

Q.9 Which two signs should be interchanged to make the below equation mathematically correct?  
 $12 \times 108 - 36 \div 6 + 18 = 48$

- Ans
- 1. - and +
  - 2. ÷ and -
  - 3. + and ×
  - 4. + and ÷

Question ID : 264330117514  
Status : Not Answered  
Chosen Option : --

Q.10 Which figure should replace the question mark (?) if the series were to be continued?

O	U	2	L	
B L 2	2 B L	O B U	U O B	?
U	O	L	2	

Ans

✓ 1.

U
2 O L
B

✗ 2.

2
B L U
O

✗ 3.

B
L O 2
U

✗ 4.

2
B U O
L

Question ID : 26433076624  
 Status : Not Answered  
 Chosen Option : --

Q.11 In a certain code language, 'PROVED' is written as '65' and 'REMOVED' is written as '81'. How will 'DEVOUR' be written in that language?

- Ans
- ✗ 1. 85
  - ✗ 2. 80
  - ✓ 3. 70
  - ✗ 4. 75

Question ID : 26433069474  
 Status : Not Answered  
 Chosen Option : --

**Q.12** Three statements are given followed by three conclusions numbered 1, 2 and 3. Assuming the statements to be true, even if they seem to be at variance with commonly known facts, decide which of the conclusions logically follow(s) from the statements.

Statements:

1. All cottons are silks.
2. All silks are wools.
3. All wools are jutes.

Conclusions:

1. Some jutes are silks.
2. Some wools are cottons.
3. Some jutes are cottons.

- Ans
- 1. Only conclusion 1 follows
  - 2. Only conclusions 2 and 3 follow
  - 3. All conclusions 1, 2 and 3 follow
  - 4. Only conclusions 1 and 3 follow

Question ID : 26433087134

Status : Answered

Chosen Option : 3

**Q.13** Select the option that is related to the fifth number in the same way as the second number is related to the first number and the fourth number is related to the third number.

2 : 1 :: 54 : 3 :: 16 : ?

- Ans
- 1. 4
  - 2. 2
  - 3. 5
  - 4. 3

Question ID : 26433069414

Status : Not Answered

Chosen Option : --

**Q.14** Select the option that is related to the third word in the same way as the second word is related to the first word. (The words must be considered as meaningful English words and must NOT be related to each other based on the number of letters/number of consonants/vowels in the word)

Engineer : build :: Physician : \_\_\_\_\_

- Ans
- 1. Destroy
  - 2. Cure
  - 3. Make
  - 4. build

Question ID : 26433079401

Status : Answered

Chosen Option : 2

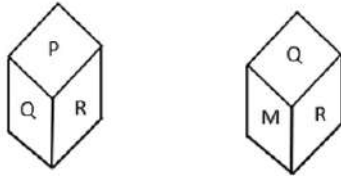


Q.15 Five people, K, L, M, N, and O are sitting in a straight row, facing north. L is sitting on the immediate left of N. M is sitting on the immediate left of L. N is sitting on the immediate left of O. K is sitting on the extreme right end of the row. Who is sitting in the exact middle of the row?

- Ans
- 1. L
  - 2. N
  - 3. M
  - 4. O

Question ID : 26433069155  
 Status : Answered  
 Chosen Option : 2

Q.16 Two different positions of the same dice are shown having alphabets 'M' to 'R'. Find the alphabet on the face opposite the face showing 'P'.



- Ans
- 1. R
  - 2. O
  - 3. M
  - 4. N

Question ID : 26433085514  
 Status : Answered  
 Chosen Option : 1

Q.17 In a certain language, DANGER is coded as REGNAD, DETAIL is coded as LIATED, how will DOCTOR be coded in the same language?

- Ans
- 1. CODTOR
  - 2. ROTCOD
  - 3. EPDUPS
  - 4. CODROT

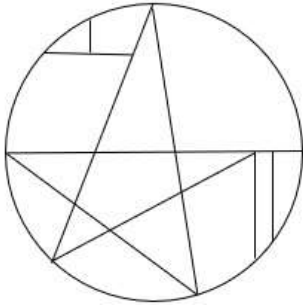
Question ID : 26433074592  
 Status : Answered  
 Chosen Option : 2

Q.18 If '+' means '÷', '÷' means '+', '×' means '×', and '×' means '+'. Which of the following will be the value of the expression?  
 $63 \div 84 + 7 - 6 \times 48$

- Ans
- 1. 33
  - 2. 39
  - 3. 46
  - 4. 49

Question ID : 264330114185  
 Status : Answered  
 Chosen Option : 2

Q.19 Select the option figure which is embedded in the given figure. (Rotation is NOT allowed)



Ans

- 1.
- 2.
- 3.
- 4.

Question ID : 26433069358

Status : Answered

Chosen Option : 2

Q.20 Six students are sitting around a circular table facing the centre. Rajesh is sitting second to the right of Ramesh. Ramesh is sitting to the immediate left of Suresh. Nimesh is sitting second to the right of Jayesh. Paresh is sitting second to the right of Rajesh. Jayesh is the immediate neighbour of Rajesh and Paresh. Who is sitting between Ramesh and Paresh?

- Ans
- 1. Rajesh
  - 2. Nimesh
  - 3. Jayesh
  - 4. Suresh

Question ID : 26433081773

Status : Not Answered

Chosen Option : --

**Q.1 Which among the following metals is the best conductor of heat?**

- Ans  1. Sodium  
 2. Silver  
 3. Iron  
 4. Gold

Question ID : 264330115152  
Status : Answered  
Chosen Option : 2

**Q.2 Mekapati Vikram Reddy, who became Member of Legislative Assembly from Atmakur constituency in Andhra Pradesh, in June 2022, belongs to \_\_\_\_\_ political party.**

- Ans  1. Bharatiya Janata Party  
 2. YSR Congress Party  
 3. Communist Party of India  
 4. Indian National Congress

Question ID : 264330114904  
Status : Not Answered  
Chosen Option : --

**Q.3 Who among the following became the Chief Minister of Uttarakhand in March 2022?**

- Ans  1. Bhuwan Chandra Khanduri  
 2. Pushkar Singh Dhama  
 3. Trivendra Singh Rawat  
 4. Tirath Singh Rawat

Question ID : 26433082244  
Status : Answered  
Chosen Option : 2

**Q.4 Who among the following was awarded the Padma Shri for the contributions in Kathak?**

- Ans  1. Sarodi Saikia  
 2. Tankeswar Hazarika Borbayan  
 3. Jogen Dutta Bayan  
 4. Sunayana Hazarilal

Question ID : 264330115874  
Status : Not Answered  
Chosen Option : --

**Q.5** When a household's income falls below the amount required to sustain basic living standards (food, shelter, housing), is called \_\_\_\_\_.

- Ans**
- 1. Relative Poverty
  - 2. Generational poverty
  - 3. Absolute Poverty
  - 4. Situational poverty

Question ID : 264330116074  
Status : Answered  
Chosen Option : 2

**Q.6** सुपर मार्केट के संचालन की एक सीमा बताएं।

- Ans**
- 1. सुपर मार्केट को शुरू करने और चलाने के लिए बड़ी मात्रा में पूंजी आवश्यक है।
  - 2. एक ग्राहक को एक ही स्थान पर विभिन्न ब्रांडों का सामान मिल सकता है।
  - 3. वे मानक गुणवत्ता वाली वस्तुएं प्रदान करते हैं।
  - 4. वे सामानों की एक विस्तृत श्रृंखला को संभालते हैं।

Question ID : 264330115548  
Status : Not Answered  
Chosen Option : --

**Q.7** The Prohibition of Child Marriage (Amendment) Bill, 2021 proposes to increase the age of girl from 18 to \_\_\_\_\_ years.

- Ans**
- 1. 20
  - 2. 24
  - 3. 21
  - 4. 22

Question ID : 264330116220  
Status : Answered  
Chosen Option : 3

**Q.8** Who was the mascot for the 2020 National Games of India?

- Ans**
- 1. Chhau, the deer.
  - 2. Ammu, the great hornbill.
  - 3. Savaj the Asiatic lion
  - 4. Rubigula, the Flame-Throated Bulbul

Question ID : 264330115953  
Status : Not Answered  
Chosen Option : --

Q.9 महामस्तकाभिषेक एक जैन त्यौहार है जो, प्रत्येक \_\_\_\_\_ वर्षों में एक बार मनाया जाता है।

- Ans
- 1. 8
  - 2. 6
  - 3. 10
  - 4. 12

Question ID : 264330115090  
Status : Not Answered  
Chosen Option : --

Q.10 Aim of last (twelfth) five year plan was:

- Ans
- 1. Faster, Sustainable, and More Inclusive Growth
  - 2. Double per capita income
  - 3. Clean India
  - 4. Creeping Growth

Question ID : 264330115370  
Status : Answered  
Chosen Option : 1

Q.11 Which one of the following is the oldest football competition in India?

- Ans
- 1. Durand Cup
  - 2. BC Roy Trophy
  - 3. Santosh Trophy
  - 4. Federation Cup

Question ID : 264330116288  
Status : Answered  
Chosen Option : 4

Q.12 National Bank for Agriculture and Rural Development(NABARD) aims at providing credit and other facilities for the promotion and development of \_\_\_\_\_ industries.

- Ans
- 1. urban
  - 2. rural
  - 3. posh
  - 4. big

Question ID : 264330115301  
Status : Answered  
Chosen Option : 1

Q.13 Who breaks down waste into smaller particles?

- Ans  1. detritivores  
 2. carnivores  
 3. omnivores  
 4. herbivores

Question ID : 264330115250  
Status : Answered  
Chosen Option : 1

Q.14 In December 1929, under the presidency of \_\_\_\_\_, the Lahore Congress formalised the demand of 'Purna Swaraj'.

- Ans  1. Baldev Singh  
 2. Jagjivan Ram  
 3. Jawaharlal Nehru  
 4. Asaf Ali

Question ID : 264330115696  
Status : Answered  
Chosen Option : 3

Q.15 Under which Article of the Constitution does a citizen have the freedom to practice any profession or occupation?

- Ans  1. Article 22 (b)  
 2. Article 19 (1) (g)  
 3. Article 21 (f)  
 4. Article 20 (c)

Question ID : 26433091448  
Status : Answered  
Chosen Option : 2

Q.16 Who among the following met the Buddha to get his advice on the proposed attack on Vajjis?

- Ans  1. Yashas  
 2. Ashoka  
 3. Radhagupta  
 4. Vassakara

Question ID : 26433089851  
Status : Answered  
Chosen Option : 4

Q.17 Which among the following dance forms is a unique dance form as the performers are dressed as women and is popular in the parts of Odisha?

- Ans
- 1. Fugdi
  - 2. Theyyam
  - 3. Gotipua
  - 4. Bihu

Question ID : 264330115066  
Status : Not Answered  
Chosen Option : --

Q.18 The climate of India is described as the \_\_\_\_\_ type.

- Ans
- 1. monsoon
  - 2. cool
  - 3. dry
  - 4. arid

Question ID : 26433089696  
Status : Answered  
Chosen Option : 1

Q.19 Major aspect of Green revolution is that, it has made India \_\_\_\_\_.

- Ans
- 1. Self-Sufficient
  - 2. Greatest Exporter of Crops
  - 3. Greatest Importer of Crops
  - 4. Largest producer of cash crops

Question ID : 264330116154  
Status : Answered  
Chosen Option : 1

Q.20 Who has been appointed as the Chairman and Managing Director of the India Trade Promotion Organization in October 2022?

- Ans
- 1. Vibhu Nayar
  - 2. Rahul Narwekar
  - 3. Noor Rahman Sheikh
  - 4. Pradeep Singh Kharola

Question ID : 264330115004  
Status : Not Answered  
Chosen Option : --

Q.1 Find the greatest number that will divide 57, 93 and 191 so as to leave the same remainder in each case.

- Ans
- 1. 4
  - 2. 2
  - 3. 3
  - 4. 1

Question ID : 26433075089  
Status : Answered  
Chosen Option : 3

Q.2 If radius of a hemisphere = radius of a cone = height of the cone, then what will be the ratio of the curved surfaces area of this hemisphere and curved surface area of this cone?

- Ans
- 1.  $1 : \sqrt{3}$
  - 2.  $\sqrt{2} : 1$
  - 3.  $1 : 2$
  - 4.  $2 : 1$

Question ID : 26433076087  
Status : Not Answered  
Chosen Option : --

Q.3 A dealer announces 8% and 18% discounts on a watch. If the selling price of the watch is ₹943, then the marked price of the watch is:

- Ans
- 1. ₹1,320
  - 2. ₹1,250
  - 3. ₹1,185
  - 4. ₹1,480

Question ID : 26433082670  
Status : Not Answered  
Chosen Option : --

Q.4 A merchant bought 1200 items for ₹1,800 and he sold them at the rate of 1000 for ₹1,600. Calculate gain or loss percentage.

- Ans
- 1.  $\frac{20}{3}$  % loss
  - 2.  $\frac{30}{7}$  % loss
  - 3.  $\frac{20}{3}$  % gain
  - 4.  $\frac{30}{7}$  % gain

Question ID : 26433074278  
Status : Not Answered  
Chosen Option : --



Q.5 A dealer sells wheat at 25% profit and uses a weight 5% less than the actual measure. His gain percentage is:

Ans

1.  $3\frac{11}{19}\%$

2.  $31\frac{11}{19}\%$

3.  $3\frac{1}{19}\%$

4.  $23\frac{1}{19}\%$

Question ID : 26433076078

Status : Not Answered

Chosen Option : --

Q.6 A sum of ₹9,960 was borrowed at 7.5% per annum compound interest and paid back in two equal annual instalments. What was the amount of each instalment?

Ans

1. ₹5,475

2. ₹5,547

3. ₹5,745

4. ₹5,457

Question ID : 26433081588

Status : Not Answered

Chosen Option : --

Q.7 The fourth proportional of the numbers 0.002, 0.04 and 0.0006 is \_\_\_\_\_.

Ans

1.  $0.12 \times 10^{-2}$

2.  $1.2 \times 10^{-3}$

3.  $1.2 \times 10^{-2}$

4.  $12 \times 10^{-2}$

Question ID : 26433091923

Status : Not Answered

Chosen Option : --

Q.8 P, Q, and R can do a piece of work in 38 days. Q and R can do the work in 76 days. Find the number of days in which P can complete the same work.

Ans

1. 81 days

2. 76 days

3. 84 days

4. 90 days

Question ID : 264330116904

Status : Answered

Chosen Option : 2

Q.9 R goes to the post office from home covering a distance of 5 km and 400 metres in half an hour, and then goes to office covering a distance of 25 km and 750 metres in 90 minutes. What is his average speed from home to office in km/h?

- Ans
- 1. 17.555
  - 2. 15.775
  - 3. 15.755
  - 4. 15.575

Question ID : 26433071259  
Status : Not Answered  
Chosen Option : --

Q.10 If the average of p, q and r is A and  $pq + qr + rp = 0$ , then the value of  $\frac{p^2+q^2+r^2}{27}$  is:

- Ans
- 1.  $A^2$
  - 2.  $3A^2$
  - 3.  $9A^2$
  - 4.  $\frac{A^2}{3}$

Question ID : 26433081542  
Status : Not Answered  
Chosen Option : --

Q.11 If 'x' is divisible by 3 and 2, then  $2x^3 + 3x^2$  is divisible by :

- Ans
- 1. 428
  - 2. 214
  - 3. 72
  - 4. 108

Question ID : 26433081700  
Status : Not Answered  
Chosen Option : --

Q.12 The discount on a toy is 15%. A successive discount of 15% is also offered. What is the effective discount on the toy

- Ans
- 1. 27.75%
  - 2. 30%
  - 3. 25%
  - 4. 32.75%

Question ID : 26433071256  
Status : Answered  
Chosen Option : 1

**Q.13** In an election between two contestants, 25% of the total votes are marked as invalid due to technical problem.

The winner gets 7500 votes, which are  $\frac{2}{3}$  of the total valid votes. The difference in votes of the winner and invalid votes is :

- Ans**
- 1. 2500
  - 2. 7500
  - 3. 3750
  - 4. 0

Question ID : 26433081705  
Status : Not Answered  
Chosen Option : --

**Q.14** A square and an equilateral triangle have equal perimeters. If the diagonal of the square is  $12\sqrt{2}$  cm, then the area of the triangle is:

- Ans**
- 1.  $64\sqrt{5}$  cm<sup>2</sup>
  - 2.  $67\sqrt{2}$  cm<sup>2</sup>
  - 3.  $64\sqrt{3}$  cm<sup>2</sup>
  - 4.  $65\sqrt{3}$  cm<sup>2</sup>

Question ID : 26433066324  
Status : Not Answered  
Chosen Option : --

**Q.15** At what rate of compound interest per annum, compounding annually, does a sum of money become  $\frac{625}{256}$  times itself in 4 years?

- Ans**
- 1. 20%
  - 2. 26%
  - 3. 22%
  - 4. 25%

Question ID : 26433075116  
Status : Not Answered  
Chosen Option : --

**Q.16** A board 100 cm long is trimmed to 86 cm. What percentage has been removed?

- Ans**
- 1. 32 percent
  - 2. 28 percent
  - 3. 14 percent
  - 4. 20 percent

Question ID : 264330116824  
Status : Not Answered  
Chosen Option : --

Q.17 Find the average of the numbers 517, 139, 195, 176 and 192.

Ans  1. 243.8

2. 726.3

3. 515.4

4. 315.4

Question ID : 26433079994

Status : Answered

Chosen Option : 4

Q.18 Rohan and Sohan can complete a piece of work in 10 days and 12 days, respectively. If they work on alternate days, starting with Sohan, in how many days will the whole work be completed?

Ans  1. 12

2. 13

3. 11

4. 10

Question ID : 26433075570

Status : Answered

Chosen Option : 3

Q.19 A runs at a speed that is  $\frac{11}{9}$  times the speed of B. If B is allowed to have a head start such that B beats A by  $\frac{1}{3}$  of the length of the race, what part of the length of the race has been given as head start to B over A? [Note: Consider A and B to start running at the same time.]

Ans  1.  $\frac{3}{11}$

2.  $\frac{22}{27}$

3.  $\frac{6}{11}$

4.  $\frac{5}{11}$

Question ID : 26433075816

Status : Not Answered

Chosen Option : --

Q.20 The price of a jacket and handbag are in the ratio of 3 : 2. If a jacket costs ₹600 more than the handbag, then the price of the handbag is:

Ans  1. ₹1,800

2. ₹1,200

3. ₹2,400

4. ₹2,800

Question ID : 26433082085

Status : Answered

Chosen Option : 2

**Q.1 Select the INCORRECTLY spelt word.**

- Ans  1. Subvert  
 2. Rebuke  
 3. Reckon  
 4. Subservent

Question ID : 26433073655  
Status : Not Answered  
Chosen Option : --

**Q.2 Select the most appropriate ANTONYM of the word given in the brackets to fill in the blank.**

We \_\_\_\_\_ (agree) to talk to terrorists.

- Ans  1. grant  
 2. admit  
 3. allow  
 4. refuse

Question ID : 26433088853  
Status : Not Answered  
Chosen Option : --

**Q.3 Select the most appropriate ANTONYM of the given word.**

Dense

- Ans  1. Compact  
 2. Secret  
 3. Sparse  
 4. Generic

Question ID : 26433071972  
Status : Not Answered  
Chosen Option : --

**Q.4 The sentence given below has one misspelt word. Spot the INCORRECTLY spelt word and select its correct spelling.**

Inkompetent employees of our company need to be sacked.

- Ans  1. Imcamentent  
 2. Incompetent  
 3. Imcompetent  
 4. Incompitent

Question ID : 26433073553  
Status : Not Answered  
Chosen Option : --

**Q.5** Select the most appropriate option that can substitute the underlined segment in the given sentence.

Not only composition, but also the wrong choice of Sridhar as the singer destroyed the sweetness on the song.

- Ans
- 1. destroyed the sweetness of the song
  - 2. destroyed the sweetness in the song
  - 3. destroyed the sweetness by the song
  - 4. destroyed the sweetness around the song

Question ID : 264330100987  
Status : Not Answered  
Chosen Option : --

**Q.6** Select the most appropriate ANTONYM of the given word.  
Perfume

- Ans
- 1. Extraordinary
  - 2. Redolence
  - 3. Fragrance
  - 4. Stench

Question ID : 26433086346  
Status : Not Answered  
Chosen Option : --

**Q.7** Select the word that is similar in meaning to the underlined word.

My boss maintained a very parochial view of the world.

- Ans
- 1. Patriarchal
  - 2. Narrow
  - 3. Harmonious
  - 4. Laughing

Question ID : 26433087945  
Status : Not Answered  
Chosen Option : --

**Q.8** Select the most appropriate synonym of the given word.

Ample

- Ans
- 1. Enthusiastic
  - 2. Abundant
  - 3. Affectionate
  - 4. Insufficient

Question ID : 26433073432  
Status : Not Answered  
Chosen Option : --

**Q.9** Select the most appropriate **ANTONYM** of the given word.

**Prosperity**

- Ans**
- 1. Money
  - 2. Gradual
  - 3. Wealth
  - 4. Failure

Question ID : **26433088324**  
Status : **Not Answered**  
Chosen Option : --

**Q.10** Select the most appropriate meaning of the given idiom.

**To go through fire and water**

- Ans**
- 1. To punish
  - 2. To tolerate
  - 3. To face many challenges
  - 4. To do something easy

Question ID : **26433073710**  
Status : **Not Answered**  
Chosen Option : --

**Q.11** Select the most appropriate meaning of the given idiom.

**Taste of your own medicine**

- Ans**
- 1. Have the same bad treatment that you have given to others
  - 2. Try to manage something which went wrong
  - 3. Extremely pleased and excited about something
  - 4. Try everything possible

Question ID : **26433072686**  
Status : **Not Answered**  
Chosen Option : --

**Q.12** The following sentence has been divided into parts. One of them may contain an error. Select the part that contains the error from the given options. If you don't find any error, mark 'No error' as your answer.

**Mrs. Meera and family / received his letter / a week ago.**

- Ans**
- 1. a week ago
  - 2. No error
  - 3. received his letter
  - 4. Mrs. Meera and family

Question ID : **264330108878**  
Status : **Not Answered**  
Chosen Option : --

Q.13 Select the most appropriate option that can substitute the underlined segment in the given sentence. If there is no need to substitute it, select 'No substitution required'.

Who penned this book on the history of India's partition?

- Ans
- 1. write
  - 2. publicise
  - 3. pen
  - 4. No substitution required

Question ID : 26433088562  
Status : Not Answered  
Chosen Option : --

Q.14 Select the most appropriate synonym of the underlined word in the following sentence.

He went to the tomb of his father to pay his tribute.

- Ans
- 1. Grave
  - 2. Mortuary
  - 3. Funeral
  - 4. Ritual

Question ID : 26433072351  
Status : Not Answered  
Chosen Option : --

Q.15 Select the most appropriate option to fill in the blank.

The Board of Doctors declared that the patient might take time to \_\_\_\_\_.

- Ans
- 1. come round
  - 2. look round
  - 3. come across
  - 4. walk through

Question ID : 26433072734  
Status : Not Answered  
Chosen Option : --



**Comprehension:**

In the following passage, some words have been deleted. Read the passage carefully and select the most appropriate option to fill in each blank.

The major goal of renewable energy deployment in India is to drive economic (1)\_\_\_\_\_, improve energy security, increase access to electricity, and (2)\_\_\_\_\_ climate change. Sustainable development is attainable via the use of sustainable energy and by giving residents (3)\_\_\_\_\_ to inexpensive, dependable, sustainable, and contemporary energy. Strong government backing and an increasingly favourable economic scenario have propelled India to the (4)\_\_\_\_\_ of the world's most promising renewable energy sectors. The government has devised regulations, initiatives, and a welcoming atmosphere to (5)\_\_\_\_\_ international investment and rapidly expand the country's presence in the renewable energy sector.

**SubQuestion No : 16**

**Q.16 Select the most appropriate option to fill in blank number 1.**

- Ans  1. growth  
 2. inflation  
 3. recession  
 4. surplus

Question ID : 26433061007

Status : Not Answered

Chosen Option : --

**Comprehension:**

In the following passage, some words have been deleted. Read the passage carefully and select the most appropriate option to fill in each blank.

The major goal of renewable energy deployment in India is to drive economic (1)\_\_\_\_\_, improve energy security, increase access to electricity, and (2)\_\_\_\_\_ climate change. Sustainable development is attainable via the use of sustainable energy and by giving residents (3)\_\_\_\_\_ to inexpensive, dependable, sustainable, and contemporary energy. Strong government backing and an increasingly favourable economic scenario have propelled India to the (4)\_\_\_\_\_ of the world's most promising renewable energy sectors. The government has devised regulations, initiatives, and a welcoming atmosphere to (5)\_\_\_\_\_ international investment and rapidly expand the country's presence in the renewable energy sector.

**SubQuestion No : 17**

**Q.17 Select the most appropriate option to fill in blank number 2.**

- Ans  1. exclude  
 2. exaggerate  
 3. reduce  
 4. increase

Question ID : 26433061008

Status : Not Answered

Chosen Option : --

**Comprehension:**

In the following passage, some words have been deleted. Read the passage carefully and select the most appropriate option to fill in each blank.

The major goal of renewable energy deployment in India is to drive economic (1)\_\_\_\_\_, improve energy security, increase access to electricity, and (2)\_\_\_\_\_ climate change. Sustainable development is attainable via the use of sustainable energy and by giving residents (3)\_\_\_\_\_ to inexpensive, dependable, sustainable, and contemporary energy. Strong government backing and an increasingly favourable economic scenario have propelled India to the (4)\_\_\_\_\_ of the world's most promising renewable energy sectors. The government has devised regulations, initiatives, and a welcoming atmosphere to (5)\_\_\_\_\_ international investment and rapidly expand the country's presence in the renewable energy sector.

**SubQuestion No : 18**

**Q.18** Select the most appropriate option to fill in blank number 3.

- Ans
- 1. excess
  - 2. power
  - 3. authority
  - 4. access

Question ID : 26433061009

Status : Not Answered

Chosen Option : --

**Comprehension:**

In the following passage, some words have been deleted. Read the passage carefully and select the most appropriate option to fill in each blank.

The major goal of renewable energy deployment in India is to drive economic (1)\_\_\_\_\_, improve energy security, increase access to electricity, and (2)\_\_\_\_\_ climate change. Sustainable development is attainable via the use of sustainable energy and by giving residents (3)\_\_\_\_\_ to inexpensive, dependable, sustainable, and contemporary energy. Strong government backing and an increasingly favourable economic scenario have propelled India to the (4)\_\_\_\_\_ of the world's most promising renewable energy sectors. The government has devised regulations, initiatives, and a welcoming atmosphere to (5)\_\_\_\_\_ international investment and rapidly expand the country's presence in the renewable energy sector.

**SubQuestion No : 19**

**Q.19** Select the most appropriate option to fill in blank number 4.

- Ans
- 1. background
  - 2. forefront
  - 3. forward
  - 4. rear

Question ID : 26433061010

Status : Not Answered

Chosen Option : --

**Comprehension:**

In the following passage, some words have been deleted. Read the passage carefully and select the most appropriate option to fill in each blank.

The major goal of renewable energy deployment in India is to drive economic (1)\_\_\_\_\_, improve energy security, increase access to electricity, and (2)\_\_\_\_\_ climate change. Sustainable development is attainable via the use of sustainable energy and by giving residents (3)\_\_\_\_\_ to inexpensive, dependable, sustainable, and contemporary energy. Strong government backing and an increasingly favourable economic scenario have propelled India to the (4)\_\_\_\_\_ of the world's most promising renewable energy sectors. The government has devised regulations, initiatives, and a welcoming atmosphere to (5)\_\_\_\_\_ international investment and rapidly expand the country's presence in the renewable energy sector.

**SubQuestion No : 20**

**Q.20** Select the most appropriate option to fill in blank number 5.

- Ans  1. attract  
 2. conceive  
 3. examine  
 4. borrow

Question ID : 26433061011  
Status : Not Answered  
Chosen Option : --

Section : Part-D-Hindi

**Q.1** आज राकेश ने अपनी दुकान का श्री \_\_\_\_\_ किया।  
रिक्त स्थान की पूर्ति उचित शब्द द्वारा कीजिए।

- Ans  1. गणेश  
 2. राम  
 3. हरि  
 4. इति

Question ID : 26433062614  
Status : Answered  
Chosen Option : 1

**Q.2** 'जो किए जाने योग्य हो' इस वाक्यांश के लिए सार्थक शब्द है -

- Ans  1. करणीय  
 2. अनुकरणीय  
 3. अकरणीय  
 4. कथित

Question ID : 26433062339  
Status : Answered  
Chosen Option : 1

Q.3 निम्नलिखित में से कौन सा शब्द अनेकार्थी शब्द है?

- Ans  1. चमेली  
 2. बेला  
 3. गुलाब  
 4. रातरानी

Question ID : 26433091321  
Status : Answered  
Chosen Option : 4

Q.4 निम्नलिखित वाक्य में रेखांकित शब्द के विलोम शब्द का प्रयोग करके रिक्त स्थान की पूर्ति कीजिए।  
दुराचार से व्यक्ति का \_\_\_\_\_ नष्ट हो जाता है।

- Ans  1. फल  
 2. सदाचार  
 3. विचार  
 4. यश

Question ID : 26433091344  
Status : Answered  
Chosen Option : 2

Q.5 निम्नलिखित वाक्यांश के लिए एक सार्थक शब्द चुनें।  
जो व्यक्ति अच्छे आचरण वाला हो

- Ans  1. सहकारी  
 2. सदाचारी  
 3. सहयोगी  
 4. समभाषी

Question ID : 26433069985  
Status : Answered  
Chosen Option : 4

Q.6 वाक्यांशों और उनके लिए एक शब्द का निम्नलिखित में से कौन सा युग्म अशुद्ध है?

- Ans  1. सात दिन का समूह-सप्ताह  
 2. जो किसी से जीता न जा सके-अजेय  
 3. लेने की इच्छा-लिप्सा  
 4. नाप तौलकर खर्च करने वाला-मितभाषी

Question ID : 26433086289  
Status : Answered  
Chosen Option : 4

Q.7 निम्न में से कौन सा वाक्य संबोधन कारक का उदाहरण नहीं है?

- Ans  1. आलोक माँ के लिए दवाई लाया।  
 2. अरे भाई ! यहाँ आओ।  
 3. हे भगवान ! तू सबका भला कर।  
 4. अजी तुम उसे क्या मारोगे?

Question ID : 26433079226  
Status : Answered  
Chosen Option : 3

Q.8 मिश्र वाक्य - 'लोग समझते हैं कि तुम मूर्ख हो।' निम्नलिखित विकल्पों में से इस वाक्य के लिए कौन सा एक उचित सरल वाक्य होगा ?

- Ans  1. तुम मूर्ख हो, लोग समझते हैं।  
 2. मूर्ख लोग समझते तुम्हें हैं।  
 3. लोग तुम्हें मूर्ख समझते हैं।  
 4. मूर्ख लोग समझते हैं।

Question ID : 26433062435  
Status : Answered  
Chosen Option : 3

Q.9 निम्नलिखित में से शुद्ध वाक्य है-

- Ans  1. दीपक गाय चरत है।  
 2. दीपक गाय चारता है।  
 3. दीपक गाय चरता है।  
 4. दीपक गाय चराता है।

Question ID : 26433066838  
Status : Answered  
Chosen Option : 4

Q.10 निम्नलिखित में से क्या 'मान' का अर्थ नहीं है?

- Ans  1. सम्मान  
 2. अभिमान  
 3. इज्जत  
 4. श्रेष्ठ

Question ID : 26433080941  
Status : Answered  
Chosen Option : 4

Q.11 निम्नलिखित वाक्य में कौन सा शब्द क्रिया शब्द है?  
मैंने आशा को मीनार दिखाई।

- Ans
- 1. मीनार
  - 2. दिखाई
  - 3. मैंने
  - 4. आशा

Question ID : 26433085039  
Status : Answered  
Chosen Option : 4

Q.12 निम्नलिखित वाक्य के रिक्त स्थान में सबसे उपयुक्त मुहावरा क्या होगा?  
'इस पद पर पहुँचने से पहले उसे बहुत \_\_\_\_\_ है।'

- Ans
- 1. पापड़ बेलने पड़े
  - 2. एक एक ग्यारह
  - 3. बाजी मारना
  - 4. नौ-दो ग्यारह

Question ID : 26433066724  
Status : Answered  
Chosen Option : 1

Q.13 दिए गए वाक्य के रेखांकित शब्द को उचित विकल्प से परिवर्तित करें।  
महासागर पर पुल बन जाने पर रावण को आश्चर्य हुआ।

- Ans
- 1. संकोच
  - 2. भ्रम
  - 3. हर्ष
  - 4. विस्मय

Question ID : 26433069917  
Status : Answered  
Chosen Option : 4

Q.14 गंगा का जल अत्यंत पावन है।  
उपरोक्त वाक्य में रेखांकित शब्द के उचित पर्यायवाची शब्द का चयन विकल्पों में से कीजिए।

- Ans
- 1. देवनादी
  - 2. विभूति
  - 3. देवा
  - 4. मधु

Question ID : 26433079727  
Status : Answered  
Chosen Option : 1

Q.15 'रमेश की माँ को गम्भीर बिमारी है।' वाक्य में अशुद्ध वर्तनी वाला शब्द है -

- Ans  1. बिमारी  
 2. रमेश  
 3. माँ  
 4. गम्भीर

Question ID : 26433069694

Status : Answered

Chosen Option : 4

**Comprehension:**

निम्नलिखित गद्यांश में कुछ शब्दों को हटा दिया गया है। दिए गए विकल्पों की सहायता से रिक्त स्थानों की पूर्ति कीजिए। प्रत्येक संख्या के लिए सबसे उपयुक्त विकल्प का चयन कीजिए।  
कविता बनाना 1. \_\_\_\_\_ नहीं है। यह भगवान द्वारा मिला 2. \_\_\_\_\_ है। यह गुण अनेक लोगों में होता है, 3. \_\_\_\_\_ उन्हें इसका बोध नहीं होता। सही 4. \_\_\_\_\_ मिलने पर उनकी सोई हुई काव्य- प्रतिभा जाग उठती है।  
अतः अध्यापकों का 5. \_\_\_\_\_ बनता है कि वे बच्चों की काव्य-प्रतिभा के विकास का उपाय करें। केवल यह कहने पर कि बारिश पर कविता बनाओ विद्यार्थी कुछ भी नहीं कर पाते।

SubQuestion No : 16

Q.16 रिक्त स्थान 1 की पूर्ति के लिए सबसे उपयुक्त विकल्प का चयन करें।

- Ans  1. कठिन  
 2. नामुमकिन  
 3. खेल  
 4. मुश्किल

Question ID : 264330110921

Status : Answered

Chosen Option : 3

**Comprehension:**

निम्नलिखित गद्यांश में कुछ शब्दों को हटा दिया गया है। दिए गए विकल्पों की सहायता से रिक्त स्थानों की पूर्ति कीजिए। प्रत्येक संख्या के लिए सबसे उपयुक्त विकल्प का चयन कीजिए।  
कविता बनाना 1. \_\_\_\_\_ नहीं है। यह भगवान द्वारा मिला 2. \_\_\_\_\_ है। यह गुण अनेक लोगों में होता है, 3. \_\_\_\_\_ उन्हें इसका बोध नहीं होता। सही 4. \_\_\_\_\_ मिलने पर उनकी सोई हुई काव्य- प्रतिभा जाग उठती है।  
अतः अध्यापकों का 5. \_\_\_\_\_ बनता है कि वे बच्चों की काव्य-प्रतिभा के विकास का उपाय करें। केवल यह कहने पर कि बारिश पर कविता बनाओ विद्यार्थी कुछ भी नहीं कर पाते।

SubQuestion No : 17

Q.17 रिक्त स्थान 2 की पूर्ति के लिए सबसे उपयुक्त विकल्प का चयन करें।

- Ans  1. बद्दुआ  
 2. अभिशाप  
 3. श्राप  
 4. वरदान

Question ID : 264330110922

Status : Answered

Chosen Option : 4

**Comprehension:**

निम्नलिखित गद्यांश में कुछ शब्दों को हटा दिया गया है। दिए गए विकल्पों की सहायता से रिक्त स्थानों की पूर्ति कीजिए। प्रत्येक संख्या के लिए सबसे उपयुक्त विकल्प का चयन कीजिए।  
कविता बनाना 1. \_\_\_\_\_ नहीं है। यह भगवान द्वारा मिला 2. \_\_\_\_\_ है। यह गुण अनेक लोगों में होता है, 3. \_\_\_\_\_ उन्हें इसका बोध नहीं होता। सही 4. \_\_\_\_\_ मिलने पर उनकी सोई हुई काव्य- प्रतिभा जाग उठती है।  
अतः अध्यापकों का 5. \_\_\_\_\_ बनता है कि वे बच्चों की काव्य-प्रतिभा के विकास का उपाय करें। केवल यह कहने पर कि बारिश पर कविता बनाओ विद्यार्थी कुछ भी नहीं कर पाते।

**SubQuestion No : 18**

Q.18 रिक्त स्थान 3 की पूर्ति के लिए सबसे उपयुक्त विकल्प का चयन करें।

- Ans
- 1. और
  - 2. परन्तु
  - 3. द्वारा
  - 4. की

Question ID : 264330110923

Status : Answered

Chosen Option : 2

**Comprehension:**

निम्नलिखित गद्यांश में कुछ शब्दों को हटा दिया गया है। दिए गए विकल्पों की सहायता से रिक्त स्थानों की पूर्ति कीजिए। प्रत्येक संख्या के लिए सबसे उपयुक्त विकल्प का चयन कीजिए।  
कविता बनाना 1. \_\_\_\_\_ नहीं है। यह भगवान द्वारा मिला 2. \_\_\_\_\_ है। यह गुण अनेक लोगों में होता है, 3. \_\_\_\_\_ उन्हें इसका बोध नहीं होता। सही 4. \_\_\_\_\_ मिलने पर उनकी सोई हुई काव्य- प्रतिभा जाग उठती है।  
अतः अध्यापकों का 5. \_\_\_\_\_ बनता है कि वे बच्चों की काव्य-प्रतिभा के विकास का उपाय करें। केवल यह कहने पर कि बारिश पर कविता बनाओ विद्यार्थी कुछ भी नहीं कर पाते।

**SubQuestion No : 19**

Q.19 रिक्त स्थान 4 की पूर्ति के लिए सबसे उपयुक्त विकल्प का चयन करें।

- Ans
- 1. अवसर
  - 2. दुखी होने पर
  - 3. अकेले होने पर
  - 4. मौका न मिलने पर

Question ID : 264330110924

Status : Answered

Chosen Option : 1



**Comprehension:**

निम्नलिखित गद्यांश में कुछ शब्दों को हटा दिया गया है। दिए गए विकल्पों की सहायता से रिक्त स्थानों की पूर्ति कीजिए। प्रत्येक संख्या के लिए सबसे उपयुक्त विकल्प का चयन कीजिए।  
कविता बनाना 1. \_\_\_\_\_ नहीं है। यह भगवान द्वारा मिला 2. \_\_\_\_\_ है। यह गुण अनेक लोगों में होता है, 3. \_\_\_\_\_ उन्हें इसका बोध नहीं होता। सही 4. \_\_\_\_\_ मिलने पर उनकी सोई हुई काव्य- प्रतिभा जाग उठती है।  
अतः अध्यापकों का 5. \_\_\_\_\_ बनता है कि वे बच्चों की काव्य-प्रतिभा के विकास का उपाय करें। केवल यह कहने पर कि बारिश पर कविता बनाओ विद्यार्थी कुछ भी नहीं कर पाते।

**SubQuestion No : 20**

**Q.20** रिक्त स्थान 5 की पूर्ति के लिए सबसे उपयुक्त विकल्प का चयन करें।

- Ans**
- 1. काम नहीं है
  - 2. अकर्तव्य
  - 3. कर्तव्य
  - 4. योग्यता

Question ID : 264330110925

Status : Answered

Chosen Option : 4

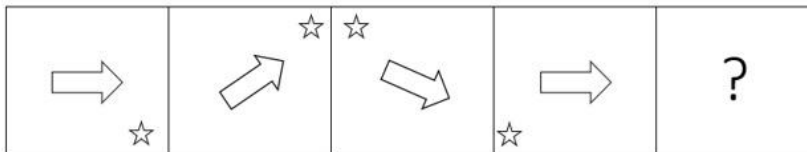
KD Job Updates

## Constable GD in CAPFs SSF Rifleman GD in Assam Rifles and Sepoy in NCB Examination 2022

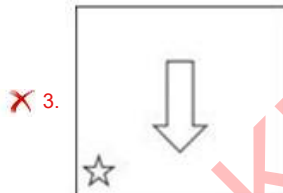
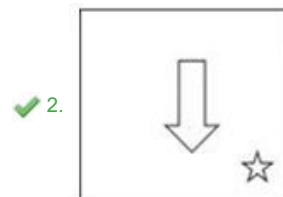
Roll Number	@Qmaths Telegram Channel
Candidate Name	@Qmaths Telegram Channel
Venue Name	ION Digital Zone iDZ Kuanwala
Exam Date	08/02/2023
Exam Time	9:00 AM - 10:00 AM
Subject	Constable GD Examination 2022

### Section : Part-A-General Intelligence and Reasoning

Q.1 Select the figure from among the given options that can replace the question mark (?) in the following series.



Ans



Question ID : 26433080754  
Status : Answered  
Chosen Option : 2

**Q.2** Three statements are given, followed by three conclusions numbered I, II and III. Assuming the statements to be true, even if they seem to be at variance with commonly known facts, decide which of the conclusions logically follow(s) from the statements.

**Statements:**

Some lamps are clocks.

All clocks are books.

Some books are stones.

**Conclusions:**

I. Some lamps are stones.

II. Some books are lamps.

III. Some clocks are stones.

- Ans**  1. Only conclusions I and III follow  
 2. Only conclusion II follows  
 3. Only conclusions I and II follow  
 4. All conclusions follow

Question ID : 26433090988  
Status : Answered  
Chosen Option : 2

**Q.3** Select the option that is related to the third word in the same way as the second word is related to the first word. (The words must be considered as meaningful English words and must not be related to each other based on the number of letters/number of consonants/vowels in the word)  
Cricket : Bat :: Badminton : ?

- Ans**  1. Ball  
 2. Stick  
 3. Player  
 4. Racket

Question ID : 26433067804  
Status : Answered  
Chosen Option : 4

**Q.4** Which of the following numbers will replace the question mark (?) in the given series?  
600, 120, 30, 10, ?

- Ans**  1. 5  
 2. 1  
 3. 15  
 4. 12

Question ID : 26433082014  
Status : Answered  
Chosen Option : 1

**Q.5** Seven people, A, B, C, D, E, F and G are sitting in a straight line, facing north. Only two people sit to the right of E. Only two people sit between E and A. B sits second to the right of A. D sits to the immediate right of F. C sits at one of the positions to the left of G. Who sits at the extreme left end of the line?

- Ans**  1. F  
 2. A  
 3. B  
 4. C

Question ID : 26433092418  
Status : Answered  
Chosen Option : 4

**Q.6** Which two signs should be interchanged to make the below equation mathematically correct?

$$165 - 15 \div 5 + 6 \times 16 = 102$$

- Ans
- 1. - and +
  - 2. + and ×
  - 3. + and ÷
  - 4. ÷ and -

Question ID : 264330117555  
 Status : Answered  
 Chosen Option : 4

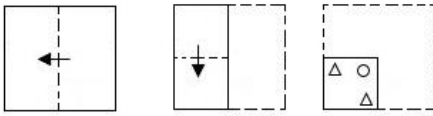
**Q.7** Select the option that is related to the fifth number in the same way as the second number is related to the first number and the fourth number is related to the third number.

$$76 : 16 :: 56 : 12 :: 21 : ?$$

- Ans
- 1. 18
  - 2. 5
  - 3. 7
  - 4. 11

Question ID : 26433069427  
 Status : Not Answered  
 Chosen Option : --

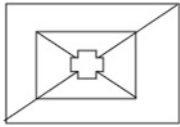
**Q.8** A paper is folded and cut as shown below. How will it appear when unfolded?



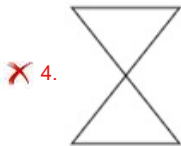
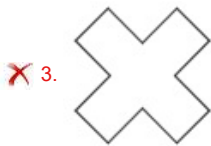
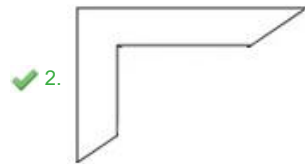
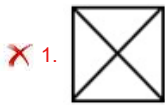
- Ans
- 1.
  - 2.
  - 3.
  - 4.

Question ID : 26433090086  
 Status : Answered  
 Chosen Option : 3

Q.9 Select the option that is embedded in the given figure (rotation is NOT allowed).



Ans



Question ID : 26433082898  
Status : Answered  
Chosen Option : 2

Q.10 In a certain code language, 'MAKE' is written as '32' and 'QUAD' is written as '45'. How will 'SELF' be written as in that language?

- Ans
- ✗ 1. 42
  - ✗ 2. 46
  - ✗ 3. 40
  - ✓ 4. 44

Question ID : 26433069646  
Status : Answered  
Chosen Option : 4

Q.11 Select the letter-cluster from among the given options that can replace the question mark (?) in the following series.  
GZT, ZSM, SLF, LEY, ?

- Ans
- ✓ 1. EXR
  - ✗ 2. GXP
  - ✗ 3. GXR
  - ✗ 4. EXP

Question ID : 26433079036  
Status : Answered  
Chosen Option : 1

Q.12 In a certain code language, 'BRIGHT' is written as 'JSCVJI' and 'BROKEN' is written as 'PSCPGM'. How will 'BUDGET' be written as in that language?

- Ans
- 1. EVCTEG
  - 2. TEGDUB
  - 3. DUBTEG
  - 4. EVCVGI

Question ID : 26433090039  
Status : Answered  
Chosen Option : 4

Q.13 Select the option that is related to the third word in the same way as the second word is related to the first word. (The words must be considered as meaningful English words and must not be related to each other based on the number of letters/number of consonants/vowels in the word)  
Fast : Slow :: Up : ?

- Ans
- 1. Huge
  - 2. Down
  - 3. Great
  - 4. Sky

Question ID : 26433082939  
Status : Answered  
Chosen Option : 2

Q.14 Which option represents the correct order of the given words as they would appear in the English dictionary?

1. lastly
2. latex
3. large
4. laminate
5. ladle

- Ans
- 1. 5,4,3,1,2
  - 2. 5,1,3,4,2
  - 3. 5,4,3,2,1
  - 4. 5,2,3,1,4

Question ID : 26433069328  
Status : Answered  
Chosen Option : 1

Q.15 Which of the following terms will replace the question mark (?) in the given series?  
RLMT, QNJX, PPGb, ORDF, ?

- Ans
- 1. UTNB
  - 2. ATUN
  - 3. TNUA
  - 4. NTAJ

Question ID : 26433068986  
Status : Answered  
Chosen Option : 4

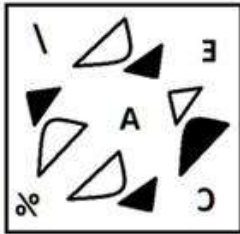
**Q.16** Which of the following figures is the exact mirror image of the given problem figure when the mirror is held at the right side?

Problem figure:

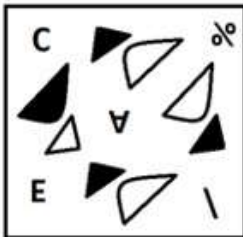


Ans

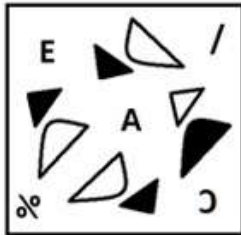
✓ 1.



✗ 2.



✗ 3.



✗ 4.



Question ID : 26433087089

Status : Answered

Chosen Option : 1

**Q.17** Which two numbers(not digits) should be interchanged in the following equation to make it correct?

$$540 + 225 \div 15 \times 25 - 260 = 415$$

Ans ✓ 1. 15 and 25

✗ 2. 225 and 260

✗ 3. 15 and 260

✗ 4. 225 and 25

Question ID : 26433090139

Status : Answered

Chosen Option : 1

Q.18 'A + B' means 'A is the brother of B'.  
'A - B' means 'A is the mother of B'.  
'A × B' means 'A is the husband of B'.  
'A ÷ B' means 'A is the sister of B'.  
'A @ B' means 'A is the son of B'.  
If J @ K × L - M ÷ N, how is J related to N?

- Ans
- 1. Sister's son
  - 2. Brother
  - 3. Sister's husband
  - 4. Mother's sister

Question ID : 26433086998  
Status : Answered  
Chosen Option : 2

Q.19 Which of the following options will replace the question mark (?) in the given series?  
176, 326, 526, 776, ?, 1426, 1826

- Ans
- 1. 976
  - 2. 1276
  - 3. 1076
  - 4. 1176

Question ID : 26433089437  
Status : Answered  
Chosen Option : 3

Q.20 Seven people L, M, N, O, P, Q, and R are sitting in a row facing the North. R and P are sitting at the ends of the row. N is sitting to the immediate right of P. M is sitting to the third left of R. O is sitting to the immediate right of M. L is sitting between N and M. Who is sitting to the immediate left of R?

- Ans
- 1. L
  - 2. M
  - 3. P
  - 4. Q

Question ID : 26433074629  
Status : Answered  
Chosen Option : 4

Section : Part-B-General Knowledge and General awareness

Q.1 Who among the following became the President of Indian National Congress, a political party, in October 2022?

- Ans
- 1. Shashi Tharoor
  - 2. Sonia Gandhi
  - 3. Mallikarjun Kharge
  - 4. Sunil Jakhar

Question ID : 264330114959  
Status : Answered  
Chosen Option : 3



Q.2 How many players are there in a Field Hockey team?

- Ans  1. 11  
 2. 12  
 3. 10  
 4. 8

Question ID : 264330116302  
Status : Answered  
Chosen Option : 1

Q.3 Kalamandalam Kallyanikutty Amma received fame and recognition for her work in\_\_\_\_\_.

- Ans  1. Kuchipudi  
 2. Creative dance  
 3. Mohiniyattam  
 4. Sattriya

Question ID : 264330115885  
Status : Marked For Review  
Chosen Option : 3

Q.4 Who led the Bharat Jodo Yatra 2022?

- Ans  1. Sonia Gandhi  
 2. Tarun Gandhi  
 3. Rahul Gandhi  
 4. Priyanka Gandhi

Question ID : 264330115045  
Status : Answered  
Chosen Option : 3

Q.5 Who among the following is the composer of Prayag Prashasti or the Allahabad Pillar in praise of Gupta ruler Samudra Gupta?

- Ans  1. Harishena  
 2. Kalidasa  
 3. Vishakhadatta  
 4. Bhasa

Question ID : 26433099150  
Status : Answered  
Chosen Option : 1

Q.6 Match the following:

- a) National Highways i) Zila Parishad  
b) State Highways ii) State Public Works Department  
c) Border Roads iii) Central Public Works Department  
d) District Roads iv) Border Roads Organisation

- Ans  1. a-iv,b-iii,c-i,d-ii  
 2. a-ii,b-iii,c-iv,d-i  
 3. a-iii,b-ii,c-i,d-iv  
 4. a-iii,b-ii,c-iv,d-i

Question ID : 264330115589  
Status : Answered  
Chosen Option : 4

**Q.7** In the expenditure method, GDP  $\equiv$  Sum total of all the final \_\_\_\_\_ received by the firms in the economy.

- Ans**
- 1. revenue
  - 2. income
  - 3. sales
  - 4. expenditures

Question ID : 264330115342  
Status : **Marked For Review**  
Chosen Option : 1

**Q.8** Which of the following is a risk with regard to the Green Revolution?

- Ans**
- 1. Increase in the farmers income
  - 2. Increased disparities between small and big farmers
  - 3. Increase in food grain production
  - 4. Increase in productivity in food grains

Question ID : 26433054628  
Status : **Answered**  
Chosen Option : 2

**Q.9** What is the name of the Southernmost tip of India?

- Ans**
- 1. Indira Col
  - 2. Indira Point
  - 3. Karakoram
  - 4. Point Calimere

Question ID : 264330116013  
Status : **Marked For Review**  
Chosen Option : 2

**Q.10** Criminal law amendment act 2018, increased minimum punishment for rape of women from 7 to \_\_\_\_\_ years.

- Ans**
- 1. 9
  - 2. 11
  - 3. 8
  - 4. 10

Question ID : 264330116231  
Status : **Answered**  
Chosen Option : 4

**Q.11** Under the Indian Constitution, the Supreme Court can issue \_\_\_\_\_ for the enforcement of any of the rights conferred by Part III.

- Ans**
- 1. Writs
  - 2. Notifications
  - 3. Decrees
  - 4. Ordinances

Question ID : 264330115643  
Status : **Answered**  
Chosen Option : 1

**Q.12** Who has the power to recommend for the imposition of Constitutional Emergency in a state?

- Ans**
- 1. The Vice President of India
  - 2. The Prime Minister of India
  - 3. The Home Minister of India
  - 4. The Governor of that state

Question ID : 26433090678  
Status : Answered  
Chosen Option : 4

**Q.13** How many deities are worshipped in Kharchi Puja of Tripura?

- Ans**
- 1. 9
  - 2. 8
  - 3. 14
  - 4. 13

Question ID : 264330106216  
Status : Answered  
Chosen Option : 4

**Q.14** The green plants in a terrestrial ecosystem capture about \_\_\_\_\_ of the energy of sunlight that falls on their leaves and convert it into food energy.

- Ans**
- 1. 25%
  - 2. 10%
  - 3. 50%
  - 4. 1%

Question ID : 264330115261  
Status : Marked For Review  
Chosen Option : 3

**Q.15** The athletes while throwing the discus have to remain inside a circle of how many diameter?

- Ans**
- 1. 2 meters
  - 2. 2.5 meters
  - 3. 3.5 meters
  - 4. 3 meters

Question ID : 264330115945  
Status : Answered  
Chosen Option : 2

**Q.16** Who among the following authors incorporated the song Vande Mataram into his novel?

- Ans**
- 1. Murugam Periyar
  - 2. Lal Makhan Singh
  - 3. Vir Singh Salgaonkar
  - 4. Bankim Chandra Chattopadhyay

Question ID : 26433091466  
Status : Answered  
Chosen Option : 4

Q.17 Who among the following personalities is an exponent of Indian classical dance?

- Ans
- 1. Zakir Hussain
  - 2. Amjad Ali Khan
  - 3. Rani Karnaa
  - 4. Sukanya Ramgopal

Question ID : 26433070806  
Status : Marked For Review  
Chosen Option : 3

Q.18 This underemployment is hidden in contrast to someone who does not have a job and is clearly visible as unemployed. Hence, it is also called \_\_\_\_\_.

- Ans
- 1. Cyclic unemployment
  - 2. Frictional unemployment
  - 3. Open employment
  - 4. Disguised employment

Question ID : 264330116083  
Status : Marked For Review  
Chosen Option : 4

Q.19 Maximum number of electrons that can filled in a shell is given by \_\_\_\_\_ where n is orbit number.

- Ans
- 1.  $2n^3$
  - 2.  $3n^2$
  - 3.  $2n^2$
  - 4.  $3n^3$

Question ID : 264330115178  
Status : Answered  
Chosen Option : 3

Q.20 In India, white revolution is also known as \_\_\_\_\_.

- Ans
- 1. operation dairy
  - 2. operation dam
  - 3. operation flood
  - 4. operation milk

Question ID : 264330115421  
Status : Answered  
Chosen Option : 3

Section : Part-C-Elementary Mathematics

Q.1 If y varies directly with x, and  $y = 16$  when  $x = 24$ , then find the value of y when  $x = 45$ .

- Ans
- 1. 24
  - 2. 40
  - 3. 30
  - 4. 45

Question ID : 26433074994  
Status : Answered  
Chosen Option : 3

Q.2 What is the rate of compound interest per annum, if a sum becomes  $\frac{64}{27}$  times in 3 years?

Ans

1.  $21\frac{1}{3}$  percent

2.  $16\frac{1}{3}$  percent

3.  $25\frac{1}{4}$  percent

4.  $33\frac{1}{3}$  percent

Question ID : 26433079876

Status : Answered

Chosen Option : 4

Q.3 A man purchased a table marked at ₹500 at two successive discounts of 8% and 25% respectively. He spent ₹32 on transportation and sold the table for ₹500. What is the amount he gained?

Ans

1. ₹130

2. ₹120

3. ₹123

4. ₹124

Question ID : 26433075348

Status : Answered

Chosen Option : 3

Q.4 A cuboid has sides in the ratio 3 : 4 : 5 and its volume is 480 cubic units. The difference between the largest and the smallest side is \_\_\_\_\_ units.

Ans

1. 3

2. 4

3. 5

4. 6

Question ID : 26433071270

Status : Answered

Chosen Option : 2

Q.5 10 kg of superior quality of rice is mixed with 5 kg of inferior quality of rice. The prices of superior quality and inferior quality rice are ₹85 and ₹46, respectively. Find the average price per kg of the mixture

Ans

1. ₹72

2. ₹73

3. ₹75

4. ₹74

Question ID : 26433076172

Status : Answered

Chosen Option : 1

**Q.6** Amisha walks 3 km at a speed of 2 km/h, runs 7 km at a speed of 4 km/h and goes another 32 km by bus. If the speed of the bus is 28 km/h, then find Amisha's average speed for the whole journey.

- Ans
- 1.  $\frac{392}{41}$  km/h
  - 2.  $\frac{394}{41}$  km/h
  - 3.  $\frac{391}{41}$  km/h
  - 4.  $\frac{393}{41}$  km/h

Question ID : 26433092158  
Status : Answered  
Chosen Option : 1

**Q.7** Rakhi sold a TV to Sujata at a profit of 10%. Urmila sold that TV to Rakhi at a profit of 20%. How much did Sujata pay to buy the TV if the cost price for Urmila was Rs.50,000?

- Ans
- 1. Rs.66,000
  - 2. Rs.72,000
  - 3. Rs.78,000
  - 4. Rs.65,000

Question ID : 26433075058  
Status : Answered  
Chosen Option : 1

**Q.8** P can do a piece of work in 20 days and Q can do it in 25 days. If they work on it together for 4 days, then what percentage of work will be left?

- Ans
- 1. 68%
  - 2. 52%
  - 3. 64%
  - 4. 36%

Question ID : 26433075955  
Status : Answered  
Chosen Option : 3

**Q.9** A certain sum amounts to Rs.7,200 in 2 years at 6% per annum compound interest, compounded annually. Find the sum (in Rs., to the nearest integer).

- Ans
- 1. Rs.6,400
  - 2. Rs.6,449
  - 3. Rs.6,408
  - 4. Rs.6,507

Question ID : 26433076041  
Status : Answered  
Chosen Option : 3

Q.10 A government servant spends 76% of his income. If his income is increased by 14%, and his expenditure is increased by 10%, then find the percentage increase in his savings. (Correct to 2 decimal places)

- Ans
- 1. 24.33%
  - 2. 27.66%
  - 3. 26.67%
  - 4. 28.33%

Question ID : 26433080156  
Status : Answered  
Chosen Option : 3

Q.11 What is the largest number which can divide 187, 233 and 279, leaving the same remainder in each case?

- Ans
- 1. 30
  - 2. 36
  - 3. 46
  - 4. 56

Question ID : 26433082341  
Status : Answered  
Chosen Option : 3

Q.12 Two trains of lengths 257.5 m and 272.5 m, travelling in opposite directions crossed each other in 15.9 sec. What is their approximate combined speed per hour?

- Ans
- 1. 150 km/h
  - 2. 136 km/h
  - 3. 145 km/h
  - 4. 120 km/h

Question ID : 26433075922  
Status : Answered  
Chosen Option : 4

Q.13 There was 20% discount on VIP bags. Anupam bought a bag. He also got an additional 8% discount for paying cash. If he paid ₹2,208, then what was the price tag on the bag?

- Ans
- 1. ₹2,300
  - 2. ₹2,500
  - 3. ₹2,600
  - 4. ₹3,000

Question ID : 26433080174  
Status : Answered  
Chosen Option : 4

**Q.14** A seller marked the price 25% more than its cost price. If he allows a discount of 42%, then find his loss percent.

- Ans
- 1. 33.5%
  - 2. 27.5%
  - 3. 30%
  - 4. 8.5%

Question ID : 26433074927  
Status : Answered  
Chosen Option : 2

**Q.15** The value of a motorbike depreciates by 10% per annum. What will be the value of the motorbike after 36 months, if its current value is Rs.1,00,000?

- Ans
- 1. 70900
  - 2. 71900
  - 3. 72900
  - 4. 73900

Question ID : 26433071358  
Status : Answered  
Chosen Option : 3

**Q.16** If three solid spheres of metal whose radii are 1cm, 6 cm and 8 cm are melted to form another solid sphere, then the surface area of new sphere (in  $\text{cm}^2$ ) is:

- Ans
- 1.  $364 \pi$
  - 2.  $243 \pi$
  - 3.  $324 \pi$
  - 4.  $642 \pi$

Question ID : 26433075896  
Status : Answered  
Chosen Option : 3

**Q.17** A train is moving at a uniform speed of 80km/h. How much distance is covered by the train in 30 minutes?

- Ans
- 1. 40 km
  - 2. 50 km
  - 3. 70 km
  - 4. 60 km

Question ID : 26433074951  
Status : Answered  
Chosen Option : 1

**Q.18** Pooja, Neha, and Manoj can do a piece of work in 16, 22, and 20 days respectively. On which day will the work get finished if Pooja is assisted by both Neha and Manoj on every second day?

- Ans
- 1. 10th day
  - 2. 8th day
  - 3. 9th day
  - 4. 7th day

Question ID : 264330116915  
Status : Answered  
Chosen Option : 2



Q.19 If  $36 \div 2 + y \times 3 - 22 = 8$ , then find the value of  $y$ .

- Ans  1. 8  
 2. 4  
 3. 2  
 4. 1

Question ID : 26433079763  
Status : Answered  
Chosen Option : 2

Q.20 The length of a train is 150 metres. In 3 seconds, it passes a man travelling at 2 km/h in the same direction as the train. Determine the train's speed.

- Ans  1. 176 km/h  
 2. 191 km/h  
 3. 168 km/h  
 4. 182 km/h

Question ID : 26433075853  
Status : Answered  
Chosen Option : 4

Section : Part-D-English

Q.1 Select the most appropriate option to fill in the blanks in the given sentence.

My teacher said, "Time \_\_\_\_\_ like an arrow, and fruit \_\_\_\_\_ like bananas".

- Ans  1. wings  
 2. travels  
 3. flies  
 4. glides

Question ID : 26433084770  
Status : Answered  
Chosen Option : 3

Q.2 Select the appropriate idiom that can replace the underlined phrase in the following sentence.

It was a great chance. You missed out an opportunity.

- Ans  1. are in the middle of nowhere  
 2. are a blessing in disguise  
 3. are dead as a dodo  
 4. missed the boat

Question ID : 26433072363  
Status : Answered  
Chosen Option : 4

Q.3 Select the most appropriate synonym of the given word.

Grandeur

- Ans  1. Magnificence  
 2. Liable  
 3. Commotion  
 4. Power

Question ID : 26433087916  
Status : Answered  
Chosen Option : 1

Q.4 Select the most appropriate option that can substitute the underlined segment in the given sentence.

In spite of all her air and graces, she had very few talents

- Ans  1. airing her grace  
 2. airs and graces  
 3. airs and grace  
 4. airing her graces

Question ID : 26433071934  
Status : Answered  
Chosen Option : 2

Q.5 Select the most appropriate synonym of the underlined word.

He paused several times while delivering the speech.

- Ans  1. persisted  
 2. stammered  
 3. left  
 4. halted

Question ID : 26433088492  
Status : Answered  
Chosen Option : 4

Q.6 Select the most appropriate synonym of the underlined word in the given sentence.

The decision taken by the director is a/(an) judicious one.

- Ans  1. honest  
 2. irrational  
 3. thoughtful  
 4. foolish

Question ID : 26433092108  
Status : Answered  
Chosen Option : 3

**Q.7** The sentence given below has one misspelt word. Spot the INCORRECTLY spelt word and select its correct spelling.

Clouds are a kaleidoscope of shapes, sizes, patterns and colours.

- Ans**  1. Kaleidoscope  
 2. Kaleidascope  
 3. Caliedoscope  
 4. Caledoscope

Question ID : 26433073546  
Status : Answered  
Chosen Option : 1

**Q.8** Select the most appropriate option to substitute the underlined segment in the given sentence.

Water pollution not only endangers human health but also our environment.

- Ans**  1. only causes  
 2. only harms  
 3. only shatters  
 4. only clashes

Question ID : 26433089829  
Status : Answered  
Chosen Option : 2

**Q.9** Select the most appropriate ANTONYM of the given word.

Relevant

- Ans**  1. Insignificant  
 2. Ignorant  
 3. Compact  
 4. Applicable

Question ID : 26433090785  
Status : Answered  
Chosen Option : 1

**Q.10** Select the most appropriate option to fill in the blank.

David always takes extra effort and \_\_\_\_\_ the assignments on time.

- Ans**  1. submit  
 2. submitted  
 3. submits  
 4. may submit

Question ID : 26433089300  
Status : Answered  
Chosen Option : 3

Q.11 Select the most appropriate ANTONYM of the given word.

Prompt

- Ans  1. Attentive  
 2. Initiate  
 3. Delayed  
 4. Efficient

Question ID : 26433090795  
Status : Answered  
Chosen Option : 3

Q.12 Select the most appropriate option that can substitute the underlined segment in the given sentence. If there is no need to substitute it, select 'No substitution'.

When he hand in his homework, he forgot to give the teacher the last page.

- Ans  1. When he handed his homework,  
 2. When he has handed in his homework,  
 3. No substitution  
 4. When he handed in his homework,

Question ID : 264330101024  
Status : Answered  
Chosen Option : 1

Q.13 Select the most appropriate synonym of the given word to fill in the blank in the sentence.

Propel

Paddles are used to \_\_\_\_\_ the boat.

- Ans  1. rush  
 2. move  
 3. carry  
 4. run

Question ID : 26433060554  
Status : Answered  
Chosen Option : 2

Q.14 Select the most appropriate option that can substitute the underlined segment in the given sentence.

Heather studied really hard during six days in order to crack the entrance examination.

- Ans  1. studied really hard underneath six days  
 2. studied really hard during those six days  
 3. studied real hard during six days  
 4. studied really hard during that six days

Question ID : 26433091774  
Status : Answered  
Chosen Option : 2

**Q.15 Select the most appropriate option to fill in the blank.**

Competition and cooperation are the most \_\_\_\_\_ elements of a company's success story.

- Ans
- 1. insignificant
  - 2. useless
  - 3. inappropriate
  - 4. important

Question ID : 26433073787  
Status : Answered  
Chosen Option : 4

**Comprehension:**

In the following passage, some words have been deleted. Read the passage carefully and select the most appropriate option to fill in each blank.

Outside, the world had become a formless, (1)\_\_\_\_\_ with no shape, while the house itself seemed to have twisted and stretched. There was sticky web-stuff (2)\_\_\_\_\_ to her arm, and she wiped it off as best as she could. The other mother was waiting for her, standing on the grass with her arms (3)\_\_\_\_\_. Her black button eyes were expressionless, but her lips were pressed tightly in a cold (4)\_\_\_\_\_. When she saw Myna she reached (5)\_\_\_\_\_ one long white hand, and she crooked a finger.

SubQuestion No : 16

**Q.16 Select the most appropriate option to fill in blank number 1.**

- Ans
- 1. ambiguous
  - 2. advent
  - 3. ambivalent
  - 4. amorphous

Question ID : 26433091407  
Status : Answered  
Chosen Option : 4

**Comprehension:**

In the following passage, some words have been deleted. Read the passage carefully and select the most appropriate option to fill in each blank.

Outside, the world had become a formless, (1)\_\_\_\_\_ with no shape, while the house itself seemed to have twisted and stretched. There was sticky web-stuff (2)\_\_\_\_\_ to her arm, and she wiped it off as best as she could. The other mother was waiting for her, standing on the grass with her arms (3)\_\_\_\_\_. Her black button eyes were expressionless, but her lips were pressed tightly in a cold (4)\_\_\_\_\_. When she saw Myna she reached (5)\_\_\_\_\_ one long white hand, and she crooked a finger.

SubQuestion No : 17

**Q.17 Select the most appropriate option to fill in blank number 2.**

- Ans
- 1. unmoor
  - 2. clung
  - 3. dried
  - 4. manumit

Question ID : 26433091408  
Status : Answered  
Chosen Option : 2

**Comprehension:**

In the following passage, some words have been deleted. Read the passage carefully and select the most appropriate option to fill in each blank.

Outside, the world had become a formless, (1)\_\_\_\_\_ with no shape, while the house itself seemed to have twisted and stretched. There was sticky web-stuff (2)\_\_\_\_\_ to her arm, and she wiped it off as best as she could. The other mother was waiting for her, standing on the grass with her arms (3)\_\_\_\_\_. Her black button eyes were expressionless, but her lips were pressed tightly in a cold (4)\_\_\_\_\_. When she saw Myna she reached (5)\_\_\_\_\_ one long white hand, and she crooked a finger.

**SubQuestion No : 18**

**Q.18 Select the most appropriate option to fill in blank number 3.**

- Ans**
- 1. joined
  - 2. entwined
  - 3. entangled
  - 4. folded

Question ID : 26433091409  
Status : Answered  
Chosen Option : 4

**Comprehension:**

In the following passage, some words have been deleted. Read the passage carefully and select the most appropriate option to fill in each blank.

Outside, the world had become a formless, (1)\_\_\_\_\_ with no shape, while the house itself seemed to have twisted and stretched. There was sticky web-stuff (2)\_\_\_\_\_ to her arm, and she wiped it off as best as she could. The other mother was waiting for her, standing on the grass with her arms (3)\_\_\_\_\_. Her black button eyes were expressionless, but her lips were pressed tightly in a cold (4)\_\_\_\_\_. When she saw Myna she reached (5)\_\_\_\_\_ one long white hand, and she crooked a finger.

**SubQuestion No : 19**

**Q.19 Select the most appropriate option to fill in blank number 4.**

- Ans**
- 1. serenity
  - 2. calmness
  - 3. fury
  - 4. quietude

Question ID : 26433091410  
Status : Answered  
Chosen Option : 3

**Comprehension:**

In the following passage, some words have been deleted. Read the passage carefully and select the most appropriate option to fill in each blank.

Outside, the world had become a formless, (1)\_\_\_\_\_ with no shape, while the house itself seemed to have twisted and stretched. There was sticky web-stuff (2)\_\_\_\_\_ to her arm, and she wiped it off as best as she could. The other mother was waiting for her, standing on the grass with her arms (3)\_\_\_\_\_. Her black button eyes were expressionless, but her lips were pressed tightly in a cold (4)\_\_\_\_\_. When she saw Myna she reached (5)\_\_\_\_\_ one long white hand, and she crooked a finger.

**SubQuestion No : 20**

**Q.20 Select the most appropriate option to fill in blank number 5.**

- Ans**
- 1. by
  - 2. out
  - 3. of
  - 4. in

Question ID : 26433091411  
Status : Answered  
Chosen Option : 2

Q.1 निम्नलिखित में से शुद्ध वाक्य कौन-सा है?

- Ans
- 1. सब तरह के वर्ग के लोग सभा में उपस्थित थे।
  - 2. यह बात कहने में अनन्या को संकोच न होगा।
  - 3. इस बात को कहने में अनन्या को संकोच न होगा।
  - 4. बाजार में झुंडों के झुण्ड जानवर खड़े थे।

Question ID : 26433066997  
Status : Not Answered  
Chosen Option : --

Q.2 विकल्पों में दिए गए किस वाक्य में निम्न शब्द के पर्यायवाची का प्रयोग किया गया है?  
गणेश

- Ans
- 1. हम पुरंदर की पूजा करते हैं।
  - 2. हमें गजानन की पूजा करनी चाहिए।
  - 3. हमें शशिशेखर की अर्चना करनी चाहिए।
  - 4. हमें पीताम्बर की अर्चना करनी चाहिए।

Question ID : 26433066932  
Status : Not Answered  
Chosen Option : --

Q.3 निम्न वाक्य में रेखांकित शब्द के स्थान पर सर्वोचित शब्द का चयन कीजिए।  
चंद्रगुप्त ऐतिहासिक मरुभूमि पर लिखा गया नाटक है।

- Ans
- 1. रूपांतरण
  - 2. पृष्ठभूमि
  - 3. शैली
  - 4. भाषा

Question ID : 26433065699  
Status : Not Answered  
Chosen Option : --

Q.4 'इन्द्र' का पर्यायवाची शब्द इनमें से क्या होगा?

- Ans
- 1. शक्र
  - 2. पिनाकी
  - 3. मनोज
  - 4. पंचबाण

Question ID : 26433066904  
Status : Not Answered  
Chosen Option : --

Q.5 दिए गए मुहावरे में रेखांकित अंश के स्थान पर सबसे उपयुक्त विकल्प कौन-सा होगा?  
सिर पर आदमी सवार होना।

- Ans
- 1. इंसान
  - 2. भगवान
  - 3. भूत
  - 4. जानवर

Question ID : 26433066745  
Status : Not Answered  
Chosen Option : --

Q.6 निम्नलिखित वाक्य के रिक्त स्थान की पूर्ति उचित संज्ञा शब्द से करें।  
डॉक्टर \_\_\_\_\_ का परीक्षण करता है।

- Ans
- 1. कुछ
  - 2. रोगी
  - 3. नीरस
  - 4. अपने-आप

Question ID : 26433085021  
Status : Not Answered  
Chosen Option : --

Q.7 दानव का स्वरूप कुरूप है और ईश्वर का \_\_\_\_\_।  
उपरोक्त वाक्य में रिक्त स्थान की पूर्ति 'कुरूप' के विलोम शब्द से करें।

- Ans
- 1. स्वरूप
  - 2. सुंदर
  - 3. भौंडा
  - 4. रूप

Question ID : 26433080878  
Status : Not Answered  
Chosen Option : --

Q.8 निम्न वाक्यांश के लिए उपयुक्त एक शब्द क्या होगा?  
जिसके पाणि में चक्र है

- Ans
- 1. चक्रपाणि
  - 2. चतुर्दिक
  - 3. चक्रधर
  - 4. चक्राकार

Question ID : 26433070084  
Status : Not Answered  
Chosen Option : --

Q.9 निम्नलिखित मुहावरे में गलत शब्द है-  
आकाश-पत्तल एक कर देना

- Ans
- 1. देना
  - 2. पत्तल
  - 3. आकाश
  - 4. एक

Question ID : 26433062812  
Status : Not Answered  
Chosen Option : --

Q.10 विकल्पों में से कौन सा शब्द निम्न वाक्य में रेखांकित अंश के स्थान पर आ सकता है?  
इस समय उनकी आयु 70 वर्ष है।

- Ans
- 1. जीवन
  - 2. जन्मतिथि
  - 3. स्थिति
  - 4. उम्र

Question ID : 26433066877  
Status : Not Answered  
Chosen Option : --



Q.11 'विरचि' के लिए समानार्थी शब्द चुनकर निम्न वाक्य पूर्ण कीजिए।  
राक्षस को \_\_\_\_\_ से वरदान मिला।

- Ans
- 1. विष्णु
  - 2. शंकर
  - 3. ब्रह्मा
  - 4. गणेश

Question ID : 26433063099  
Status : Not Answered  
Chosen Option : --

Q.12 निम्नलिखित में से कौन-सा वाक्य संज्ञा के प्रयोग की दृष्टि से शुद्ध है?

- Ans
- 1. विश्वजीत को सफल होने की उम्मीद नहीं है।
  - 2. विश्वजीत को सफल होने की जिजीविषा नहीं है।
  - 3. विश्वजीत को सफल होने की निराशा नहीं है।
  - 4. विश्वजीत को सफल होने की हताशा है।

Question ID : 26433066959  
Status : Not Answered  
Chosen Option : --

Q.13 मेरे सिवाय अनेक को एकाआध पुरस्कार अवश्य मिला।  
उपरोक्त वाक्य में रेखांकित शब्द के स्थान पर आने वाले सर्वोचित विकल्प का चयन कीजिए।

- Ans
- 1. प्रत्येक
  - 2. किन्ही
  - 3. कुछ
  - 4. सबको

Question ID : 26433084956  
Status : Not Answered  
Chosen Option : --

Q.14 'कक्ष से बाहर \_\_\_\_\_ नियमों का पालन करें।' वाक्य में रिक्त स्थान की पूर्ति शुद्ध शब्द द्वारा कीजिए।

- Ans
- 1. उल्लेखित
  - 2. उलेखित
  - 3. उल्लेकित
  - 4. उल्लिखित

Question ID : 26433069701  
Status : Not Answered  
Chosen Option : --

Q.15 निम्नलिखित वाक्यांश के लिए एक सार्थक शब्द चुनिए।  
जो बाएँ और दाएँ दोनों हाथों से तीर चला ले

- Ans
- 1. सहोदर
  - 2. सव्यसाची
  - 3. शाक्त
  - 4. मुक्तहस्त

Question ID : 26433062733  
Status : Not Answered  
Chosen Option : --

**Comprehension:**

निम्नलिखित गद्यांश में से कुछ शब्द हटा दिए गए हैं। दिए गए विकल्पों की सहायता से रिक्त स्थानों की पूर्ति कीजिए। प्रत्येक संख्या के लिए उपयुक्त विकल्प का चयन कीजिए।  
सर्दियों में लूसी ने दो बच्चों 1. \_\_\_\_\_ जन्म दिया, किंतु उनमें से 2. \_\_\_\_\_ तो शीत के कारण मर गया और दूसरा उस ठिठुराने वाले परिवेश से जूझने लगा। चार-3. \_\_\_\_\_ दिन के 4. \_\_\_\_\_ को छोड़कर लूसी फिर दुकान 5. \_\_\_\_\_ आने-जाने लगी थी।

**SubQuestion No : 16****Q.16 रिक्त स्थान 1 की पूर्ति के लिए सर्वाधिक उपयुक्त विकल्प का चयन कीजिए।**

- Ans  1. को  
 2. के  
 3. का  
 4. की

Question ID : 26433079686  
Status : Not Answered  
Chosen Option : --

**Comprehension:**

निम्नलिखित गद्यांश में से कुछ शब्द हटा दिए गए हैं। दिए गए विकल्पों की सहायता से रिक्त स्थानों की पूर्ति कीजिए। प्रत्येक संख्या के लिए उपयुक्त विकल्प का चयन कीजिए।  
सर्दियों में लूसी ने दो बच्चों 1. \_\_\_\_\_ जन्म दिया, किंतु उनमें से 2. \_\_\_\_\_ तो शीत के कारण मर गया और दूसरा उस ठिठुराने वाले परिवेश से जूझने लगा। चार-3. \_\_\_\_\_ दिन के 4. \_\_\_\_\_ को छोड़कर लूसी फिर दुकान 5. \_\_\_\_\_ आने-जाने लगी थी।

**SubQuestion No : 17****Q.17 रिक्त स्थान 2 की पूर्ति के लिए सर्वाधिक उपयुक्त विकल्प का चयन कीजिए।**

- Ans  1. कुछ  
 2. अनेक  
 3. कोई  
 4. एक

Question ID : 26433079687  
Status : Not Answered  
Chosen Option : --

**Comprehension:**

निम्नलिखित गद्यांश में से कुछ शब्द हटा दिए गए हैं। दिए गए विकल्पों की सहायता से रिक्त स्थानों की पूर्ति कीजिए। प्रत्येक संख्या के लिए उपयुक्त विकल्प का चयन कीजिए।  
सर्दियों में लूसी ने दो बच्चों 1. \_\_\_\_\_ जन्म दिया, किंतु उनमें से 2. \_\_\_\_\_ तो शीत के कारण मर गया और दूसरा उस ठिठुराने वाले परिवेश से जूझने लगा। चार-3. \_\_\_\_\_ दिन के 4. \_\_\_\_\_ को छोड़कर लूसी फिर दुकान 5. \_\_\_\_\_ आने-जाने लगी थी।

**SubQuestion No : 18****Q.18 रिक्त स्थान 3 की पूर्ति के लिए सर्वाधिक उपयुक्त विकल्प का चयन कीजिए।**

- Ans  1. तीन  
 2. पाँच  
 3. सात  
 4. छह

Question ID : 26433079688  
Status : Not Answered  
Chosen Option : --

**Comprehension:**

निम्नलिखित गद्यांश में से कुछ शब्द हटा दिए गए हैं। दिए गए विकल्पों की सहायता से रिक्त स्थानों की पूर्ति कीजिए। प्रत्येक संख्या के लिए उपयुक्त विकल्प का चयन कीजिए।  
सर्दियों में लूसी ने दो बच्चों 1. \_\_\_\_\_ जन्म दिया, किंतु उनमें से 2. \_\_\_\_\_ तो शीत के कारण मर गया और दूसरा उस ठिठुराने वाले परिवेश से जूझने लगा। चार-3. \_\_\_\_\_ दिन के 4. \_\_\_\_\_ को छोड़कर लूसी फिर दुकान 5. \_\_\_\_\_ आने-जाने लगी थी।

**SubQuestion No : 19**

**Q.19 रिक्त स्थान 4 की पूर्ति के लिए सर्वाधिक उपयुक्त विकल्प का चयन कीजिए।**

- Ans**
- 1. चूजे
  - 2. आदमी
  - 3. दोस्त
  - 4. बच्चे

Question ID : 26433079689  
Status : Not Answered  
Chosen Option : --

**Comprehension:**

निम्नलिखित गद्यांश में से कुछ शब्द हटा दिए गए हैं। दिए गए विकल्पों की सहायता से रिक्त स्थानों की पूर्ति कीजिए। प्रत्येक संख्या के लिए उपयुक्त विकल्प का चयन कीजिए।  
सर्दियों में लूसी ने दो बच्चों 1. \_\_\_\_\_ जन्म दिया, किंतु उनमें से 2. \_\_\_\_\_ तो शीत के कारण मर गया और दूसरा उस ठिठुराने वाले परिवेश से जूझने लगा। चार-3. \_\_\_\_\_ दिन के 4. \_\_\_\_\_ को छोड़कर लूसी फिर दुकान 5. \_\_\_\_\_ आने-जाने लगी थी।

**SubQuestion No : 20**

**Q.20 रिक्त स्थान 5 की पूर्ति के लिए सर्वाधिक उपयुक्त विकल्प का चयन कीजिए।**

- Ans**
- 1. सब
  - 2. भर
  - 3. तक
  - 4. के सामने

Question ID : 26433079690  
Status : Not Answered  
Chosen Option : --

# Constable GD in CAPFs SSF Rifleman GD in Assam Rifles and Sepoy in NCB Examination 2022

Roll Number	KD Job Updates
Candidate Name	KD Job Updates
Venue Name	iON Digital Zone iDZ 1 Sector 62
Exam Date	08/02/2023
Exam Time	11:45 AM - 12:45 PM
Subject	Constable GD Examination 2022

## Section : Part-A-General Intelligence and Reasoning

Q.1 In a certain code language, 'BEAUTY' is written as 'DDZTVA' and 'GLORIA' is written as 'INNTHZ'. How will 'CLEAVE' be written in that language?

- Ans
- 1. ENGZXD
  - 2. ENDZXD
  - 3. EKGZWD
  - 4. ENG CXG

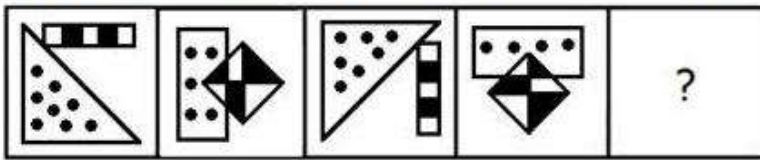
Question ID : 26433081761  
Status : Answered  
Chosen Option : 2

Q.2 उस विकल्प का चयन कीजिए जो तीसरे शब्द से उसी प्रकार संबंधित है जिस प्रकार दूसरा शब्द पहले शब्द से संबंधित है। (शब्दों को अर्थपूर्ण शब्दों के रूप में मानना है और उन्हें शब्द में अक्षरों/व्यंजनों/स्वरों की संख्या के आधार पर एक-दूसरे से संबंधित नहीं करना है।)  
छात्र : कक्षा :: देश : ?

- Ans
- 1. महाद्वीप
  - 2. क्षेत्र
  - 3. परिषद
  - 4. राष्ट्र

Question ID : 26433069575  
Status : Answered  
Chosen Option : 1

Q.3 Select the figure that will come next in the following series.



Ans

- 1.
- 2.
- 3.
- 4.

Question ID : 26433078970  
Status : Answered  
Chosen Option : 4

Q.4 Which letter-cluster will replace the question mark (?) to complete the given series?  
WDGP, TBDN, QZAL, ?, KVVH

- Ans
- 1. MXYJ
  - 2. NXXJ
  - 3. OXYI
  - 4. MWXK

Question ID : 26433068033  
Status : Answered  
Chosen Option : 2

Q.5 Which number will replace the question mark (?) in the following series?  
42, 56, 72, ?, 110, 132

- Ans  1. 90  
 2. 84  
 3. 80  
 4. 92

Question ID : 26433067835  
Status : Answered  
Chosen Option : 1

Q.6 If '+' means 'x', '-' means '÷', 'x' means '+', and '÷' means '-', then which of the following equation would be correct?

- Ans  1.  $32 \div 8 \times 4 + 64 - 16 = 48$   
 2.  $24 \times 4 + 4 \div 64 - 16 = 60$   
 3.  $32 - 4 \div 8 \times 64 \div 16 = 36$   
 4.  $48 - 8 + 4 \times 64 \div 16 = 72$

Question ID : 264330117486  
Status : Answered  
Chosen Option : 4

Q.7 'A + B' means 'B is the father of A'  
'A - B' means 'B is the mother of A'  
'A \$ B' means 'B is the husband of A'  
If A + B - C \$ D, then how is D related to A?

- Ans  1. Father's brother  
 2. Father's father  
 3. Son  
 4. Father

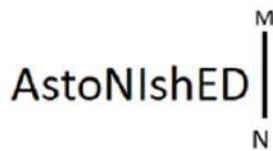
Question ID : 26433068526  
Status : Answered  
Chosen Option : 2

Q.8 Which letter-cluster will replace the question mark (?) to complete the given series?  
CVRK, FYUN, ?, LEAT, OHDW

- Ans  1. IBXQ  
 2. ICXQ  
 3. JCXQ  
 4. JBXQ

Question ID : 26433067942  
Status : Answered  
Chosen Option : 1

Q.9 Select the correct mirror image of the given figure when the mirror is placed at MN as shown below.



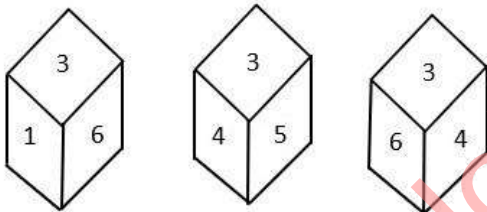
- Ans
- ✓ 1. AstoNlshED
  - ✗ 2. astoNlshED
  - ✗ 3. AstoNlshED
  - ✗ 4. AstoNlshED

Question ID : 26433085554

Status : Answered

Chosen Option : 1

Q.10 Three different positions of the same dice are shown. Find the number on the face opposite the face showing ' 3 '.



- Ans
- ✗ 1. 6
  - ✓ 2. 2
  - ✗ 3. 5
  - ✗ 4. 4

Question ID : 26433090071

Status : Answered

Chosen Option : 2

Q.11 Seven people, J, K, L, M, N, O and P are sitting in a straight row, facing north. J sits fourth to the left of N. O sits third to the right of J. M sits fourth to the left of O. Only three people sit between P and L. No one sits to the left of L. Who sits at the second position from the right end of the row?

- Ans
- ✗ 1. P
  - ✗ 2. N
  - ✓ 3. O
  - ✗ 4. M

Question ID : 26433068283

Status : Answered

Chosen Option : 3

Q.12 In a code language, 'he is late' is coded as 'ah hu lu', 'she is expected' is coded as 'bo hu ma', and 'she arrived late' is coded as 'bo ka lu'. What is the code for the word 'arrived'?

- Ans
- 1. bo
  - 2. lu
  - 3. ka
  - 4. hu

Question ID : 26433069470  
Status : Answered  
Chosen Option : 3

Q.13 A, B, C, D, and E are five students sitting around a circular table facing the centre. D sits to the immediate right of A. C is not sitting next to D or A. E is sitting to the immediate right of C. Who is sitting to the immediate right of D?

- Ans
- 1. E
  - 2. B
  - 3. A
  - 4. C

Question ID : 264330114203  
Status : Answered  
Chosen Option : 2

Q.14 Which of the following numbers will replace the question mark (?) in the given series?  
1, 2, 3, 5, 8, ?, 21, 34

- Ans
- 1. 17
  - 2. 16
  - 3. 11
  - 4. 13

Question ID : 26433076752  
Status : Answered  
Chosen Option : 4

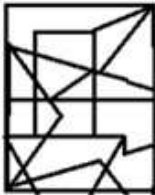


Q.15 Select the option figure in which the given figure is embedded (rotation is NOT allowed).

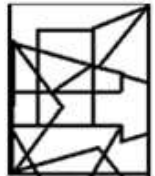


Ans

✗ 1.



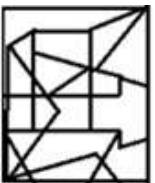
✓ 2.



✗ 3.



✗ 4.



Question ID : 26433069251  
Status : Answered  
Chosen Option : 4

Q.16 Select the option that is related to the third word in the same way as the second word is related to the first word. (The words must be considered as meaningful English words and must not be related to each other based on the number of letters/number of consonants/vowels in the word.)  
Ostrich : Bird :: Frog : ?

- Ans
- ✗ 1. Reptile
  - ✗ 2. Mammal
  - ✓ 3. Amphibian
  - ✗ 4. Rodent

Question ID : 26433067363  
Status : Answered  
Chosen Option : 1

Q.17 Three statements are given, followed by three conclusions numbered I, II and III. Assuming the statements to be true, even if they seem to be at variance with commonly known facts, decide which of the conclusions logically follow(s) from the statements.

Statements:

Some chairs are beds.

Some tables are desks.

All beds are tables.

Conclusions:

I. Some chairs are tables.

II. Some desks are beds.

III. Some desks are chairs.

- Ans
- 1. All the conclusions follow
  - 2. Only conclusion I follows
  - 3. Only conclusion II follows
  - 4. Only conclusion III follows

Question ID : 26433085680

Status : Answered

Chosen Option : 2

Q.18 Which option represents the correct order of the given words as they would appear in the English dictionary?

1 fragile

2 frame

3 friction

4 fragment

5 fragrance

- Ans
- 1. 1,4,5,3,2
  - 2. 1,5,4,2,3
  - 3. 1,4,5,2,3
  - 4. 1,5,4,3,2

Question ID : 26433069301

Status : Answered

Chosen Option : 3

Q.19 Select the correct combination of mathematical signs to sequentially replace the \* signs and to balance the given equation.

$6 * 14 * 2 * 1 * 11 * 52$

- Ans
- 1.  $\times, \div, -, +, =$
  - 2.  $\times, \div, -, \times, =$
  - 3.  $\times, -, \div, +, =$
  - 4.  $\times, \div, -, -, =$

Question ID : 26433082882

Status : Answered

Chosen Option : 1

**Q.20** Select the option that is related to the fifth number in the same way as the second number is related to the first number and the fourth number is related to the third number.

64 : 5 :: 49 : 4 :: 81 : ?

Ans  1. 6

2. 9

3. 3

4. 8

Question ID : 26433069410

Status : Answered

Chosen Option : 1

Section : Part-B-General Knowledge and General awareness

**Q.1** Who is known as the father of Green Revolution in the World?

Ans  1. R.K.V. Rao

2. Norman Borlaug

3. M.S. Swaminathan.

4. Raja Krishna

Question ID : 264330116150

Status : Answered

Chosen Option : 3

**Q.2** Which of the following country was not a part of 2019 South Asian Games?

Ans  1. Taiwan

2. Bangladesh

3. Bhutan

4. India

Question ID : 264330115936

Status : Answered

Chosen Option : 1

**Q.3** Chhath Puja, an ancient Hindu festival, can fall in which of the following months?

Ans  1. March

2. November

3. August

4. May

Question ID : 264330115108

Status : Answered

Chosen Option : 1

Q.4 \_\_\_\_\_ is known as Golden Fiber.

- Ans  1. Jute  
 2. Corn  
 3. Cotton  
 4. Synthetic thread

Question ID : 264330115396  
Status : Answered  
Chosen Option : 1

Q.5 What is the trophic level of dead organic matter in detritus food chain?

- Ans  1. third  
 2. fourth  
 3. second  
 4. first

Question ID : 264330115246  
Status : Answered  
Chosen Option : 4

Q.6 कौन सी योजना प्रत्येक सहायता प्राप्त परिवार को तीन वर्ष के भीतर गरीबी रेखा से ऊपर लाने के लिए देश के ग्रामीण क्षेत्रों में शुरू की गई?

- Ans  1. ग्रामीण उद्यमी योजना  
 2. प्रधानमंत्री रोजगार योजना  
 3. गरीब कल्याण रोजगार योजना  
 4. स्वर्णजयंती ग्राम स्वरोजगार योजना

Question ID : 264330116070  
Status : Answered  
Chosen Option : 1

Q.7 किन क्षेत्रों में गहन निर्वाह कृषि की जाती है?

- Ans  1. भूमि पर आबादी दबाव रहित क्षेत्र  
 2. भूमि पर औसत आबादी दबाव वाले क्षेत्र  
 3. भूमि पर कम आबादी दबाव वाले क्षेत्र  
 4. भूमि पर उच्च आबादी दबाव वाले क्षेत्र

Question ID : 264330115520  
Status : Answered  
Chosen Option : 4

Q.8 जनवरी 2022 में नागरिक उड्डयन मंत्रालय द्वारा राष्ट्रीय वायु खेल नीति (NASP) के ड्राफ्ट में किस प्रकार की शासन संरचना प्रस्तावित की गई थी?

- Ans  1. दो स्तरीय  
 2. तीन स्तरीय  
 3. चार स्तरीय  
 4. एकल स्तरीय

Question ID : 264330114976  
Status : Answered  
Chosen Option : 1

Q.9 After how many Minutes Half Time starts in a Hockey match?

- Ans  1. 45 Minutes  
 2. 30 Minutes  
 3. 120 Minutes  
 4. 90 Minutes

Question ID : 264330116284  
Status : Answered  
Chosen Option : 1

Q.10 As of November 2022, who among the following is the Chief Minister of Kerala, India?

- Ans  1. Pinarayi Vijayan  
 2. Anandiben Patel  
 3. Basavaraj Bommai  
 4. Naveen Patnaik

Question ID : 264330114932  
Status : Answered  
Chosen Option : 1

Q.11 Which of the following books was written by Kautilya?

- Ans  1. Suktawali  
 2. Indica  
 3. Arthashastra  
 4. Mudra Rakshasa

Question ID : 26433099147  
Status : Answered  
Chosen Option : 3

Q.12 Choose among the given options, the function of the budget is:

- Ans  1. to provide names of states  
 2. to provide detailed description of incomes and expenditure of Government  
 3. to provide description of states and union  
 4. to provide details of villages

Question ID : 264330115273  
Status : Answered  
Chosen Option : 2

Q.13 An Act to provide for mental healthcare and services for persons with mental illness and to protect, promote and fulfill the rights of such persons is called \_\_\_\_\_.

- Ans  1. Mental Health Act, 2017  
 2. Mentally Disable Act, 2017  
 3. Mental Healthcare Act, 2017  
 4. Mental Peace Act, 2017

Question ID : 264330116216  
Status : Answered  
Chosen Option : 3

Q.14 सहायक गठबंधन प्रणाली, जिसके तहत किसी भारतीय शासक को अपने खुद के सशस्त्र बलों को भंग करना पड़ता था और अपने क्षेत्र में ब्रिटिश सेना और निवासियों को स्वीकार करना पड़ता था, निम्नलिखित में से किसने शुरू की थी?

- Ans  1. लॉर्ड मिंटो  
 2. लॉर्ड हेस्टिंग्स  
 3. लॉर्ड विलियम बेंटिक  
 4. लॉर्ड वैलेस्ली

Question ID : 26433099164  
Status : Answered  
Chosen Option : 4

Q.15 Kathakali primarily originated from which of the following states?

- Ans  1. Karnataka  
 2. Kerala  
 3. Andhra Pradesh  
 4. Tamil Nadu

Question ID : 264330115059  
Status : Answered  
Chosen Option : 2

Q.16 Yumlembam Gambhini Devi was awarded the Padma Shri for which art form?

- Ans
- 1. Lavani
  - 2. Kathakali
  - 3. Manipuri
  - 4. Kathak

Question ID : 264330115870  
Status : Not Answered  
Chosen Option : --

Q.17 In post-independent India, the first elected Parliament came into existence in \_\_\_\_\_.

- Ans
- 1. April 1952
  - 2. April 1957
  - 3. March 1957
  - 4. March 1951

Question ID : 26433089915  
Status : Answered  
Chosen Option : 4

Q.18 \_\_\_\_\_ is the common name of Silicon Dioxide.

- Ans
- 1. Quartz
  - 2. Plaster of Paris
  - 3. Slaked Lime
  - 4. White Vitriol

Question ID : 264330115167  
Status : Answered  
Chosen Option : 1

Q.19 Seventh Schedule of the Indian Constitution deals with \_\_\_\_\_.

- Ans
- 1. Powers of Parliament
  - 2. Panchayat Raj
  - 3. Judiciary of the states
  - 4. Distribution of power between centre and states

Question ID : 264330115608  
Status : Answered  
Chosen Option : 4

**Q.20** What kind of weather conditions are experienced as the distance from sea increases?

- Ans  1. Extreme  
 2. Light  
 3. Moderate  
 4. Temperate

Question ID : 264330115975  
Status : Answered  
Chosen Option : 4

Section : Part-C-Elementary Mathematics

**Q.1** Ajit takes twice as much time as Arun and thrice as much time as Sanjeev to complete a job. If working together, all three can complete it in 53 hours, then find the time taken by Sanjeev alone to complete the job.

- Ans  1. 105 hours  
 2. 100 hours  
 3. 106 hours  
 4. 103 hours

Question ID : 26433074944  
Status : Answered  
Chosen Option : 3

**Q.2** In a school, 20% of the boys is the same in number as  $\frac{2}{3}$  of the girls. What is the ratio of boys to girls in that school?

- Ans  1. 10 : 9  
 2. 3 : 10  
 3. 9 : 10  
 4. 10 : 3

Question ID : 26433073020  
Status : Answered  
Chosen Option : 4

**Q.3** Amit can complete a piece of work in 120 days. Amit and Sejal can complete the same work in 72 days. They started together but Sejal left after working for 20 days. Find the approximate number of days in which Amit will complete the remaining work.

- Ans  1. 87 days  
 2. 76 days  
 3. 90 days  
 4. 84 days

Question ID : 264330116900  
Status : Answered  
Chosen Option : 1



**Q.4** A person follows a strict diet and loses his weight from 80 kg to 72 kg in a month. The percent weight loss of the person is:

- Ans
- 1. 12 percent
  - 2. 10 percent
  - 3. 8 percent
  - 4. 5 percent

Question ID : 264330116820  
Status : Answered  
Chosen Option : 2

**Q.5** The marked price of an article is Rs.1000 and shopkeeper gave 40 percent discount. What will be the selling price ?

- Ans
- 1. Rs. 700
  - 2. Rs. 400
  - 3. Rs. 600
  - 4. Rs 500

Question ID : 264330116712  
Status : Answered  
Chosen Option : 3

**Q.6** Two years ago, the population of a city was 260000. If the population is depreciating by 4% every year, its present population now is:

- Ans
- 1. 139616
  - 2. 239000
  - 3. 239616
  - 4. 339610

Question ID : 26433081038  
Status : Answered  
Chosen Option : 3

**Q.7** Three runners start running on a circular track. They start from the same point at 6 AM and take 12 seconds, 15 seconds and 24 seconds respectively to finish 1 round. At what time will they meet again at the starting point?

- Ans
- 1. 6:03:20 AM
  - 2. 6:02:30 AM
  - 3. 6:01:40 AM
  - 4. 6:02:00 AM

Question ID : 264330116649  
Status : Answered  
Chosen Option : 4

**Q.8** A man rows downstream to some destination and returns in 3 hours. If the speed of the boat in still water and the speed of stream are 6 km/h and 3 km/h, respectively, then the distance of the destination from the starting place is:

- Ans
- 1. 6.75 km
  - 2. 5.55 km
  - 3. 3.25 km
  - 4. 4.20 km

Question ID : 26433074998  
Status : Answered  
Chosen Option : 1

**Q.9** How many two-digit numbers are divisible by 6?

- Ans
- 1. 12
  - 2. 18
  - 3. 15
  - 4. 16

Question ID : 26433075808  
Status : Answered  
Chosen Option : 3

**Q.10** The curved surface area of a cone is  $1100 \text{ cm}^2$ . If the diameter of the cone is 28 cm, then the slant height of the cone is:

(use  $\pi = \frac{22}{7}$ )

- Ans
- 1. 37.5 cm
  - 2. 12.5 cm
  - 3. 44 cm
  - 4. 25 cm

Question ID : 26433087413  
Status : Answered  
Chosen Option : 4

**Q.11** The prices of a school bag and a shoe are in the ratio 11 : 9. The price of a school bag is Rs.450 more than the price of a shoe. The price of a shoe is:

- Ans
- 1. Rs. 2,000
  - 2. Rs. 2,025
  - 3. Rs. 2,050
  - 4. Rs. 2,150

Question ID : 26433081017  
Status : Answered  
Chosen Option : 2

Q.12 A merchant marks up his goods by 20% and gives a discount of 10%. He uses a faulty balance which measures 800 grams instead of 1 kg. What is his net percentage profit?

- Ans
- 1. 20%
  - 2. 25%
  - 3. 35%
  - 4. 15%

Question ID : 26433075726  
Status : Answered  
Chosen Option : 3

Q.13 A boy buys a toy car for Rs.650 and sells it for Rs.750. Find the gain percentage.

- Ans
- 1. 13.33%
  - 2. 15.38%
  - 3. 16.38%
  - 4. 14.38%

Question ID : 26433065064  
Status : Answered  
Chosen Option : 2

Q.14 If the volume of a cylindrical pillar is  $924 \text{ m}^3$  and its curved surface area is  $264 \text{ m}^2$ , then the total surface area is:

- Ans
- 1.  $182 \pi \text{ m}^2$
  - 2.  $184 \text{ m}^2$
  - 3.  $164 \pi \text{ m}^2$
  - 4.  $164 \text{ m}^2$

Question ID : 26433075898  
Status : Answered  
Chosen Option : 1

Q.15 A shopkeeper earns a profit of 8% after offering a 15% discount on the marked price. To clear the stock, the shopkeeper offers a successive discount of  $x\%$  and earns no profit or loss. What is the value (approximate) of ' $x$ '?

- Ans
- 1. 7.8
  - 2. 7.6
  - 3. 7.4
  - 4. 8.0

Question ID : 26433081710  
Status : Answered  
Chosen Option : 4

Q.16 Rashmi brought 50 books at the rate of Rs.80 each, 46 pens at the rate of Rs.60 each and 60 pencils at the rate of Rs.30 each. Calculate the average price (in Rs.) of all the stationary goods. (Rounded up to 2 decimal places)

- Ans
- 1. Rs.49.87
  - 2. Rs.65.79
  - 3. Rs.46.77
  - 4. Rs.54.87

Question ID : 26433082706  
Status : Answered  
Chosen Option : 4

Q.17 If the simple interest on a sum of money at 6% per annum for 2 years is Rs.1,800, find the compound interest on the same sum for the same period at the same rate, compounding annually?

- Ans
- 1. Rs.1,584
  - 2. Rs.1,458
  - 3. Rs.1,548
  - 4. Rs.1,854

Question ID : 26433073027  
Status : Answered  
Chosen Option : 4

Q.18 Find the mean proportional of 500 and 8000.

- Ans
- 1. 200
  - 2. 4000
  - 3. 2000
  - 4. 632.46

Question ID : 26433080322  
Status : Answered  
Chosen Option : 3

Q.19 The average age of 2 children of a family is 12 years. The average age of father, mother and 2 children is 30 years. If the father is 4 years elder to the mother, then find the age of the father?

- Ans
- 1. 52 years
  - 2. 50 years
  - 3. 48 years
  - 4. 46 years

Question ID : 264330116680  
Status : Answered  
Chosen Option : 2

Q.20 A man walks from P to Q at a speed 10 km/h, but comes back from Q to P at 12 km/h.  
Find his average speed.

- Ans
- 1.  $10\frac{10}{11}$  km/h
  - 2.  $11\frac{10}{11}$  km/h
  - 3.  $9\frac{10}{11}$  km/h
  - 4.  $\frac{10}{11}$  km/h

Question ID : 26433064030  
Status : Answered  
Chosen Option : 1

Section : Part-D-English

Q.1 Select the most appropriate synonym of the word given below to fill in the blank in the following sentence.

Adversity

The sage said, "One should keep patience during \_\_\_\_\_".

- Ans
- 1. good times
  - 2. tribute
  - 3. challenges
  - 4. hardships

Question ID : 26433084775  
Status : Answered  
Chosen Option : 4

Q.2 Select the most appropriate synonym for the underlined word in the given sentence.

The wily Jerry mouse very deftly removed the cheese from the trap.

- Ans
- 1. worn
  - 2. crafty
  - 3. worrisome
  - 4. wise

Question ID : 26433073755  
Status : Answered  
Chosen Option : 2

**Q.3** Select the most appropriate option that can substitute the underlined words in the given sentence.

Hima was so affected by the movie that she has not speak a word to anyone for a week.

- Ans
- 1. that she has not been spoken a word
  - 2. that she is speaking
  - 3. that she has been speaking
  - 4. that she did not speak a word

Question ID : 26433099935  
Status : Answered  
Chosen Option : 4

**Q.4** Select the INCORRECTLY spelt word

- Ans
- 1. Radar
  - 2. Rather
  - 3. Robber
  - 4. Rebbber

Question ID : 26433071817  
Status : Answered  
Chosen Option : 4

**Q.5** Select the most appropriate meaning of the given idiom.

**Forty winks**

- Ans
- 1. To do something forty times
  - 2. To take a short nap
  - 3. To hurry and rush
  - 4. To be worried

Question ID : 26433073706  
Status : Answered  
Chosen Option : 3

**Q.6** The following sentence has been split into four segments. Identify the segment that contains a grammatical error.

When I / was / young, I / play hockey.

- Ans
- 1. was
  - 2. When I
  - 3. young, I
  - 4. play hockey

Question ID : 26433092277  
Status : Answered  
Chosen Option : 4

Q.7 Select the most appropriate ANTONYM of the given word.

Common

- Ans  1. Rare  
 2. Ordinary  
 3. Boring  
 4. Shocking

Question ID : 26433086375  
Status : Answered  
Chosen Option : 1

Q.8 Select the most appropriate ANTONYM of the given word.

Hostility

- Ans  1. Silliness  
 2. Enmity  
 3. Absurdity  
 4. Friendship

Question ID : 26433073919  
Status : Answered  
Chosen Option : 4

Q.9 Parts of the given sentence have been given as options. One of them contains a spelling error. Select the option that rectifies the error.

The Magdeburg water bridge is the longest navigable aqueduct built over the river Elbe in Germany.

- Ans  1. navaigable  
 2. longgest  
 3. aqueduct  
 4. brige

Question ID : 26433072044  
Status : Answered  
Chosen Option : 3

Q.10 Select the most appropriate antonym of the bracketed word to fill in the blank.

It would be \_\_\_\_\_ (annoying) to watch India hosting the World Cup and winning it at the same time.

- Ans  1. irksome  
 2. plaguy  
 3. pesky  
 4. delightful

Question ID : 26433060717  
Status : Answered  
Chosen Option : 1

Q.11 Select the most appropriate option to fill in the blank.

Evelyn became very angry; it seemed to her that she \_\_\_\_\_ never fulfil her dream of being a great musician.

- Ans  1. would  
 2. will  
 3. can  
 4. ought to

Question ID : 26433090440  
Status : Answered  
Chosen Option : 1

Q.12 Select the most appropriate option to fill in the blank.

The Kathakali dance form, which combines music, dance, poetry, drama and mime, uses \_\_\_\_\_ costumes.

- Ans  1. elaborate  
 2. scruffy  
 3. generic  
 4. gaudy

Question ID : 26433071743  
Status : Answered  
Chosen Option : 3

Q.13 Select the most appropriate meaning of the given idiom.

A Penelope's web

- Ans  1. A daily job  
 2. An important job  
 3. An endless job  
 4. A meaningless job

Question ID : 26433070685  
Status : Answered  
Chosen Option : 4

Q.14 Select the most appropriate option to fill in the blank.

Don't go to the neighbour's garden, \_\_\_\_\_ not allowed to go there.

- Ans  1. your  
 2. yore  
 3. yor  
 4. you're

Question ID : 26433088939  
Status : Answered  
Chosen Option : 4



**Q.15 Which of the following options is most similar in meaning to the given word?**  
**Laudable**

- Ans**  1. Preventable  
 2. Praiseworthy  
 3. Sensible  
 4. Returnable

Question ID : 26433088813  
Status : Answered  
Chosen Option : 2

**Comprehension:**

In the following passage, some words have been deleted. Read the passage carefully and select the most appropriate option to fill in each blank.

The Chinese rulers were called the Shang. Chinese civilisation is one of the oldest civilisations of the world which (1)\_\_\_\_\_ in north-east China. The Chinese had thought (2)\_\_\_\_\_ a very clever way of casting weapons and pots which were made of bronze. These people first made a rough model of the object they wanted to cast or make. Then, they shaped the clay mould closely (3)\_\_\_\_\_ the prepared model. When the clay was dry, the mould was (4)\_\_\_\_\_ and cut into pieces. These carved pieces were filled with molten bronze and left to cool down. In the final process, the mould was removed and a perfectly formed object was (5)\_\_\_\_\_.

**SubQuestion No : 16**

**Q.16 Select the most appropriate option to fill in blank number 1.**

- Ans**  1. flourished  
 2. flaunted  
 3. displayed  
 4. exhibited

Question ID : 26433088885  
Status : Answered  
Chosen Option : 4

**Comprehension:**

In the following passage, some words have been deleted. Read the passage carefully and select the most appropriate option to fill in each blank.

The Chinese rulers were called the Shang. Chinese civilisation is one of the oldest civilisations of the world which (1)\_\_\_\_\_ in north-east China. The Chinese had thought (2)\_\_\_\_\_ a very clever way of casting weapons and pots which were made of bronze. These people first made a rough model of the object they wanted to cast or make. Then, they shaped the clay mould closely (3)\_\_\_\_\_ the prepared model. When the clay was dry, the mould was (4)\_\_\_\_\_ and cut into pieces. These carved pieces were filled with molten bronze and left to cool down. In the final process, the mould was removed and a perfectly formed object was (5)\_\_\_\_\_.

**SubQuestion No : 17**

**Q.17 Select the most appropriate option to fill in blank number 2.**

- Ans**  1. down  
 2. in  
 3. up  
 4. into

Question ID : 26433088886  
Status : Answered  
Chosen Option : 3

**Comprehension:**

In the following passage, some words have been deleted. Read the passage carefully and select the most appropriate option to fill in each blank.

The Chinese rulers were called the Shang. Chinese civilisation is one of the oldest civilisations of the world which (1)\_\_\_\_\_ in north-east China. The Chinese had thought (2)\_\_\_\_\_ a very clever way of casting weapons and pots which were made of bronze. These people first made a rough model of the object they wanted to cast or make. Then, they shaped the clay mould closely (3)\_\_\_\_\_ the prepared model. When the clay was dry, the mould was (4)\_\_\_\_\_ and cut into pieces. These carved pieces were filled with molten bronze and left to cool down. In the final process, the mould was removed and a perfectly formed object was (5)\_\_\_\_\_.

**SubQuestion No : 18**

**Q.18** Select the most appropriate option to fill in blank number 3.

- Ans
- 1. beside
  - 2. across
  - 3. around
  - 4. behind

Question ID : 26433088887

Status : Answered

Chosen Option : 2

**Comprehension:**

In the following passage, some words have been deleted. Read the passage carefully and select the most appropriate option to fill in each blank.

The Chinese rulers were called the Shang. Chinese civilisation is one of the oldest civilisations of the world which (1)\_\_\_\_\_ in north-east China. The Chinese had thought (2)\_\_\_\_\_ a very clever way of casting weapons and pots which were made of bronze. These people first made a rough model of the object they wanted to cast or make. Then, they shaped the clay mould closely (3)\_\_\_\_\_ the prepared model. When the clay was dry, the mould was (4)\_\_\_\_\_ and cut into pieces. These carved pieces were filled with molten bronze and left to cool down. In the final process, the mould was removed and a perfectly formed object was (5)\_\_\_\_\_.

**SubQuestion No : 19**

**Q.19** Select the most appropriate option to fill in blank number 4.

- Ans
- 1. slipped
  - 2. closed
  - 3. removed
  - 4. distanced

Question ID : 26433088888

Status : Answered

Chosen Option : 3

**Comprehension:**

In the following passage, some words have been deleted. Read the passage carefully and select the most appropriate option to fill in each blank.

The Chinese rulers were called the Shang. Chinese civilisation is one of the oldest civilisations of the world which (1)\_\_\_\_\_ in north-east China. The Chinese had thought (2)\_\_\_\_\_ a very clever way of casting weapons and pots which were made of bronze. These people first made a rough model of the object they wanted to cast or make. Then, they shaped the clay mould closely (3)\_\_\_\_\_ the prepared model. When the clay was dry, the mould was (4)\_\_\_\_\_ and cut into pieces. These carved pieces were filled with molten bronze and left to cool down. In the final process, the mould was removed and a perfectly formed object was (5)\_\_\_\_\_.

**SubQuestion No : 20**

**Q.20** Select the most appropriate option to fill in blank number 5.

- Ans  1. dropped  
 2. disclosed  
 3. revealed  
 4. divulged

Question ID : 26433088889  
Status : Answered  
Chosen Option : 2

## Section : Part-D-Hindi

**Q.1** 'जिस पर आक्रमण न किया गया हो' वाक्यांश के लिए एक शब्द है-

- Ans  1. आक्रांत  
 2. आक्रमणशील  
 3. अनाधिकृत  
 4. अनाक्रांत

Question ID : 26433062156  
Status : Not Answered  
Chosen Option : --

**Q.2** निम्नलिखित वाक्यांश के लिए सार्थक शब्द चुनिए।  
अवसर के अनुसार बदल जाने वाला

- Ans  1. अवश्यभावी  
 2. स्वार्थन्वेषी  
 3. अवसरवादी  
 4. फायदामंद

Question ID : 26433069981  
Status : Not Answered  
Chosen Option : --

Q.3 वर्तनी की दृष्टि से दिए गए वाक्य के अशुद्ध भाग का चयन कीजिए-  
घोषणा की गई कि लोग अपने-अपने हथियार मालखाने में जमा कर दें।

- Ans
- 1. घोषणा की गई
  - 2. में जमा कर दें।
  - 3. कि लोग अपने-अपने
  - 4. हथियार मालखाने

Question ID : 26433062883  
Status : Not Answered  
Chosen Option : --

Q.4 शब्द विचार की दृष्टि से क्रिया विशेषण शब्द है-

- Ans
- 1. विकारी
  - 2. अविकारी
  - 3. सकर्मक
  - 4. अकर्मक

Question ID : 26433085047  
Status : Not Answered  
Chosen Option : --

Q.5 निम्नलिखित मुहावरे का सही अर्थ विकल्पों में से चुनिए।  
छाती पर कोदो दलना

- Ans
- 1. प्रतिशोधात्मक कष्ट पहुँचाना
  - 2. लापरवाह होना
  - 3. पीछे लगे रहना
  - 4. कुछ भी ध्यान न देना

Question ID : 26433070011  
Status : Not Answered  
Chosen Option : --

Q.6 निम्नलिखित विकल्पों में से किस एक वाक्य में 'अनृत' शब्द के लिए उचित विलोम का प्रयोग हुआ है?

- Ans
- 1. सत्य की विजय होती है।
  - 2. वह बेहतर करता है।
  - 3. वह अपराधी है।
  - 4. वह सुन्दर है।

Question ID : 26433091190  
Status : Not Answered  
Chosen Option : --

Q.7 निम्नलिखित वाक्य में उचित विकल्प चुनकर शब्द बदलें-  
'उसकी भाषा सरल और सुबोधपूर्ण होती है।'

- Ans
- 1. सरल और सुबोध
  - 2. सरस और सुबोधपूर्ण
  - 3. सरल और सुबोध
  - 4. सहज और सुबोधक

Question ID : 26433062807  
Status : Not Answered  
Chosen Option : --

Q.8 निम्न में से कौन-सा शब्द 'समुद्र' शब्द का पर्यायवाची शब्द है?

- Ans
- 1. नीरज
  - 2. अम्बर
  - 3. सागर
  - 4. वारिद

Question ID : 26433067077  
Status : Not Answered  
Chosen Option : --

Q.9 'तुम्हारे तो साँस में दम हो गया।' इस वाक्य में 'साँस' के स्थान पर उपयुक्त शब्द क्या होगा?

- Ans
- 1. आँख
  - 2. नाक
  - 3. मुँह
  - 4. सर

Question ID : 26433066802  
Status : Not Answered  
Chosen Option : --

Q.10 'आँवले के रस का उपयोग आपके लिए लाभकारी साबित होगा।' उपरोक्त वाक्य में प्रयुक्त 'उपयोग' शब्द का सही अर्थ क्या होगा?

- Ans
- 1. फायदेमंद
  - 2. धोना
  - 3. लाभकारी
  - 4. पीना

Question ID : 26433080916  
Status : Not Answered  
Chosen Option : --

Q.11 दिए गए विकल्पों में से कौन सा शब्द निम्नलिखित वाक्य में रेखांकित शब्द का पर्यायवाची नहीं है?  
'समुद्र' पर सेतु का निर्माण करना उन्नत यात्रिकी का परिणाम है।

- Ans  1. रवि  
 2. पयोधि  
 3. रत्नाकर  
 4. अर्णव

Question ID : 26433091342  
Status : Not Answered  
Chosen Option : --

Q.12 निम्नलिखित वाक्य के किस शब्द में अशुद्धि है?  
लोग रबीवार को छुट्टी मनाते हैं।

- Ans  1. छुट्टी  
 2. रबीवार  
 3. मनाते  
 4. लोग

Question ID : 26433066769  
Status : Not Answered  
Chosen Option : --

Q.13 निम्नलिखित मुहावरे के लिए उपयुक्त सार्थक शब्द क्या होगा?  
दांतों तले उंगली दबाना

- Ans  1. आश्चर्य करना  
 2. खुश होना  
 3. भूखे पेट होना  
 4. गरीब होना

Question ID : 26433065772  
Status : Not Answered  
Chosen Option : --

Q.14 निम्नलिखित वाक्यांश के लिए उपयुक्त सार्थक शब्द क्या होगा?  
सरकारी अधिकारियों का शासन

- Ans  1. राजशाही  
 2. नौकरशाही  
 3. सरकार  
 4. शासन

Question ID : 26433073314  
Status : Not Answered  
Chosen Option : --

Q.15 निम्न विकल्पों में से किसमें गलत अपादान कारक का प्रयोग हुआ है?

- Ans
- 1. वह लखनऊ से आया है।
  - 2. दूध से दही बनता है।
  - 3. मेरे हाथ से छड़ी छूट पड़ी।
  - 4. वह मुझको अलग रहता है।

Question ID : 26433063032

Status : Not Answered

Chosen Option : --

**Comprehension:**

निम्नलिखित गद्यांश में कुछ शब्दों को हटा दिया गया है। दिए गए विकल्पों की सहायता से रिक्त स्थानों की पूर्ति कीजिए। प्रत्येक संख्या के लिए सबसे उपयुक्त विकल्प का चयन कीजिए।  
आम एक ऐसा फल है, जो बच्चों को ही नहीं, बड़ों को भी 1. \_\_\_\_\_ है। इसीलिए इसे फलों का राजा कहते हैं। इसकी बहुत सी 2. \_\_\_\_\_ होती है। स्वास्थ्य के लिए यह बहुत 3. \_\_\_\_\_ होता है। इसका अचार डाला जाता है, जिसका सब बहुत वर्षों तक 4. \_\_\_\_\_ करते हैं। दूध के साथ इसका रस निकालकर पीया जाता है। यद्यपि बाग से आम तोड़कर खाना चोरी होती है, पर बच्चों के लिए तो यह खेल है, मनोरंजन का 5. \_\_\_\_\_ है।

**SubQuestion No : 16**

Q.16 रिक्त स्थान 1 की पूर्ति के लिए सबसे उपयुक्त विकल्प का चयन कीजिए।

- Ans
- 1. फेंकना
  - 2. आनंद
  - 3. नापसंद
  - 4. पसंद

Question ID : 264330111089

Status : Not Answered

Chosen Option : --

**Comprehension:**

निम्नलिखित गद्यांश में कुछ शब्दों को हटा दिया गया है। दिए गए विकल्पों की सहायता से रिक्त स्थानों की पूर्ति कीजिए। प्रत्येक संख्या के लिए सबसे उपयुक्त विकल्प का चयन कीजिए।  
आम एक ऐसा फल है, जो बच्चों को ही नहीं, बड़ों को भी 1. \_\_\_\_\_ है। इसीलिए इसे फलों का राजा कहते हैं। इसकी बहुत सी 2. \_\_\_\_\_ होती है। स्वास्थ्य के लिए यह बहुत 3. \_\_\_\_\_ होता है। इसका अचार डाला जाता है, जिसका सब बहुत वर्षों तक 4. \_\_\_\_\_ करते हैं। दूध के साथ इसका रस निकालकर पीया जाता है। यद्यपि बाग से आम तोड़कर खाना चोरी होती है, पर बच्चों के लिए तो यह खेल है, मनोरंजन का 5. \_\_\_\_\_ है।

**SubQuestion No : 17**

Q.17 रिक्त स्थान 2 की पूर्ति के लिए सबसे उपयुक्त विकल्प का चयन कीजिए।

- Ans
- 1. किस्में
  - 2. पेड़ों
  - 3. लाभ
  - 4. बातें

Question ID : 264330111090

Status : Not Answered

Chosen Option : --

**Comprehension:**

निम्नलिखित गद्यांश में कुछ शब्दों को हटा दिया गया है। दिए गए विकल्पों की सहायता से रिक्त स्थानों की पूर्ति कीजिए। प्रत्येक संख्या के लिए सबसे उपयुक्त विकल्प का चयन कीजिए।  
आम एक ऐसा फल है, जो बच्चों को ही नहीं, बड़ों को भी 1. \_\_\_\_\_ है। इसीलिए इसे फलों का राजा कहते हैं। इसकी बहुत सी 2. \_\_\_\_\_ होती है। स्वास्थ्य के लिए यह बहुत 3. \_\_\_\_\_ होता है। इसका अचार डाला जाता है, जिसका सब बहुत वर्षों तक 4. \_\_\_\_\_ करते हैं। दूध के साथ इसका रस निकालकर पीया जाता है। यद्यपि बाग से आम तोड़कर खाना चोरी होती है, पर बच्चों के लिए तो यह खेल है, मनोरंजन का 5. \_\_\_\_\_ है।

**SubQuestion No : 18**

Q.18 रिक्त स्थान 3 की पूर्ति के लिए सबसे उपयुक्त विकल्प का चयन कीजिए।

- Ans  1. लाभदायक  
 2. नुकसानदेह  
 3. विकारक  
 4. अग्निकारक

Question ID : 264330111091

Status : Not Answered

Chosen Option : --

**Comprehension:**

निम्नलिखित गद्यांश में कुछ शब्दों को हटा दिया गया है। दिए गए विकल्पों की सहायता से रिक्त स्थानों की पूर्ति कीजिए। प्रत्येक संख्या के लिए सबसे उपयुक्त विकल्प का चयन कीजिए।  
आम एक ऐसा फल है, जो बच्चों को ही नहीं, बड़ों को भी 1. \_\_\_\_\_ है। इसीलिए इसे फलों का राजा कहते हैं। इसकी बहुत सी 2. \_\_\_\_\_ होती है। स्वास्थ्य के लिए यह बहुत 3. \_\_\_\_\_ होता है। इसका अचार डाला जाता है, जिसका सब बहुत वर्षों तक 4. \_\_\_\_\_ करते हैं। दूध के साथ इसका रस निकालकर पीया जाता है। यद्यपि बाग से आम तोड़कर खाना चोरी होती है, पर बच्चों के लिए तो यह खेल है, मनोरंजन का 5. \_\_\_\_\_ है।

**SubQuestion No : 19**

Q.19 रिक्त स्थान 4 की पूर्ति के लिए सबसे उपयुक्त विकल्प का चयन कीजिए।

- Ans  1. सेवन  
 2. मनोरंजन  
 3. इच्छा  
 4. खाना

Question ID : 264330111092

Status : Not Answered

Chosen Option : --



**Comprehension:**

निम्नलिखित गद्यांश में कुछ शब्दों को हटा दिया गया है। दिए गए विकल्पों की सहायता से रिक्त स्थानों की पूर्ति कीजिए। प्रत्येक संख्या के लिए सबसे उपयुक्त विकल्प का चयन कीजिए।  
आम एक ऐसा फल है, जो बच्चों को ही नहीं, बड़ों को भी 1. \_\_\_\_\_ है। इसीलिए इसे फलों का राजा कहते हैं। इसकी बहुत सी 2. \_\_\_\_\_ होती हैं। स्वास्थ्य के लिए यह बहुत 3. \_\_\_\_\_ होता है। इसका अचार डाला जाता है, जिसका सब बहुत वर्षों तक 4. \_\_\_\_\_ करते हैं। दूध के साथ इसका रस निकालकर पीया जाता है। यद्यपि बाग से आम तोड़कर खाना चोरी होती है, पर बच्चों के लिए तो यह खेल है, मनोरंजन का 5. \_\_\_\_\_ है।

**SubQuestion No : 20**

Q.20 रिक्त स्थान 5 की पूर्ति के लिए सबसे उपयुक्त विकल्प का चयन कीजिए।

- Ans
- 1. प्रकृति
  - 2. जीवन
  - 3. साधन
  - 4. प्राप्ति

Question ID : 264330111093

Status : Not Answered

Chosen Option : --

KD Job Updates

# Constable GD in CAPFs SSF Rifleman GD in Assam Rifles and Sepoy in NCB Examination 2022

Roll Number	<b>KD Job Updates</b>
Candidate Name	<b>KD Job Updates</b>
Venue Name	TCS Gito Bitan
Exam Date	08/02/2023
Exam Time	2:30 PM - 3:30 PM
Subject	Constable GD Examination 2022

Section : **Part-A-General Intelligence and Reasoning**

**Q.1** Which of the mathematical signs should be interchanged in the below equation to make it mathematically correct?  
 $360 \times 9 - 320 + 72 \div 5 = 80$

- Ans
- 1. + and ÷
  - 2. - and ÷
  - 3. × and +
  - 4. + and ×

Question ID : **264330117488**  
Status : **Answered**  
Chosen Option : **3**

**Q.2** In this question, three statements are given, followed by two conclusions numbered I and II. Assuming the statements to be true, even if they seem to be at variance with commonly known facts, decide which of the conclusion(s) logically follows/follow from the statements.

Statements:

All fields are gardens.

All gardens are parks.

Some gardens are apartments.

Conclusions:

I. Some apartments are parks.

II. All fields are parks.

- Ans
- 1. Only conclusion II follows.
  - 2. Both conclusions I and II follow.
  - 3. Only conclusion I follow.
  - 4. Neither conclusion I nor II follows.

Question ID : **26433083095**  
Status : **Answered**  
Chosen Option : **2**

**Q.3** Select the option that is related to the third word in the same way as the second word is related to the first word. (The words must be considered as meaningful English words and must not be related to each other based on the number of letters/number of consonants/vowels in the word.)

Mare : Stallion :: Cow : ?

- Ans
- 1. Herd
  - 2. Milk
  - 3. Calf
  - 4. Bull

Question ID : 26433069577  
Status : Answered  
Chosen Option : 3

**Q.4** In a certain code language, 'fever origin' is coded as 'tree cloud', 'apple origin' is coded as 'brown cloud', and 'sandwich fever' is coded as 'shoe tree'. What is the code word for 'apple'?

- Ans
- 1. fever
  - 2. cloud
  - 3. sandwich
  - 4. brown

Question ID : 26433079363  
Status : Answered  
Chosen Option : 4

**Q.5** Which option represents the correct order of the given words as they would appear in the English dictionary?

- 1 Magical
- 2 Magnificent
- 3 Marble
- 4 Marvellous
- 5 Marigold

- Ans
- 1. 1,2,3,4,5
  - 2. 1,4,3,2,5
  - 3. 1,3,2,4,5
  - 4. 1,2,3,5,4

Question ID : 26433069281  
Status : Answered  
Chosen Option : 4

**Q.6** Select the option that is related to the fifth term in the same way as the second term is related to the first term and fourth term is related to the third term.  
ENGLISH : HSILGNE :: BIOLOGY : YGOLOIB :: PHYSICS : ?

- Ans
- 1. SPSICSY
  - 2. SYPHSIC
  - 3. SCISYHP
  - 4. PYHISCS

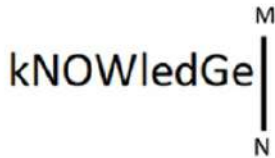
Question ID : 26433067267  
Status : Answered  
Chosen Option : 3

Q.7 Which letter-cluster will replace the question mark (?) to complete the given series?  
JSCM, ?, NYKW, PBOB, RESG

- Ans  1. LVGR  
 2. NXIS  
 3. MUHQ  
 4. MWHS

Question ID : 26433068035  
Status : Answered  
Chosen Option : 1

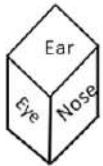
Q.8 Select the correct mirror image of the given figure when the mirror is placed at MN as shown below.



- Ans  1. kNOwledgE  
 2. EgdEwNOk  
 3. EgdEwNOk  
 4. EgdEwNOk

Question ID : 26433085553  
Status : Answered  
Chosen Option : 3

Q.9 Two different positions of the same dice are shown having names of different body parts – Ear, Eye, Nose, Mouth, Head and Hand. Find the body part on the face opposite the face showing 'Ear'.



- Ans  1. Eye  
 2. Hand  
 3. Mouth  
 4. Head

Question ID : 26433085522  
Status : Answered  
Chosen Option : 2

Q.10 'A + B' means 'B is the father of A'  
'A @ B' means 'B is the brother of A'  
'A \$ B' means 'B is the husband of A'  
'A & B' means 'B is the wife of A'  
If A @ B + C & D @ E, then how is E related to A?

Ans  1. Mother's brother

2. Son

3. Husband

4. Brother

Question ID : 26433068528

Status : Answered

Chosen Option : 1

Q.11 Select the option that is related to the fifth number in the same way as the second number is related to the first number and the fourth number is related to the third number.

20 : 2 :: 42 : 4 :: 72 : ?

Ans  1. 14

2. 10

3. 6

4. 8

Question ID : 26433069409

Status : Answered

Chosen Option : 3

KD Job Updates

Q.12 Which figure should replace the question mark (?) if the series were to be continued?

	X		↑		O		Y		
O	Y	3	3	O	Y	X	↑	△	△
△		↑	X		△	3		Y	O
									3
									?

Ans

✗ 1.

	O		
↑	△	X	
3		Y	

✗ 2.

	X		
3	Y	O	
↑		△	

✗ 3.

	3		
↑	△	X	
Y		O	

✓ 4.

	X		
O	Y	3	
△		↑	

Question ID : 26433076633

Status : Answered

Chosen Option : 2

Q.13 Seven people, A, B, C, D, E, F and G are sitting in a straight row, facing north. Only two people sit between D and G. Only four people sit between G and A. B sits fourth to the right of A. G is sitting immediately between B and F. F is sitting fifth to the right of C. Who is sitting at the third position from the left end of the row?

Ans ✗ 1. E

✗ 2. B

✗ 3. A

✓ 4. D

Question ID : 26433068282

Status : Answered

Chosen Option : 2

Q.14 Four friends Ram, Shyam, Sunil and Anil are sitting around a circular table facing the centre. If Ram is sitting to the immediate left of Sunil and Shyam is not sitting next to Ram, then who is sitting to the immediate left of Shyam?

- Ans
- 1. Ram
  - 2. Either Ram or Sunil
  - 3. Sunil
  - 4. Anil

Question ID : 264330114205  
Status : Answered  
Chosen Option : 4

Q.15 Which of the following numbers will replace the question mark (?) in the given series?  
59, 72, 87, 104, ?, 144

- Ans
- 1. 123
  - 2. 127
  - 3. 121
  - 4. 125

Question ID : 26433069394  
Status : Answered  
Chosen Option : 1

Q.16 If '+' means 'x', '÷' means '+', '-' means '÷', and 'x' means '-'. Which of the following will be the value of the expression  $48 \div 72 - 6 \times 18 + 3$

- Ans
- 1. 6
  - 2. 12
  - 3. 16
  - 4. 18

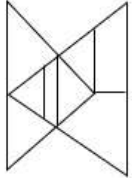
Question ID : 264330114193  
Status : Answered  
Chosen Option : 3

Q.17 Which number will replace the question mark (?) in the following series?  
125, 120, 130, ?, 135, 110

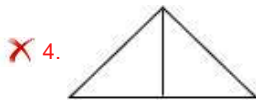
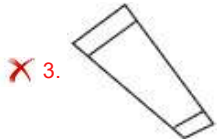
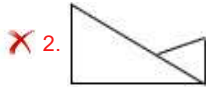
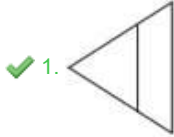
- Ans
- 1. 140
  - 2. 115
  - 3. 150
  - 4. 110

Question ID : 26433067837  
Status : Answered  
Chosen Option : 2

Q.18 Select the option figure which is embedded in the given figure. (Rotation is NOT allowed)



Ans



Question ID : 26433069330  
Status : Answered  
Chosen Option : 1

Q.19 Which of the following letters will replace the question mark (?) and complete the following letter series?  
K, N, R, W, C, ?

- Ans ✓ 1. J  
✗ 2. K  
✗ 3. L  
✗ 4. I

Question ID : 26433067296  
Status : Answered  
Chosen Option : 1

Q.20 In a code language, 'he came forward' is coded as 'ar ka mu', 'move forward' is coded as 'ba mu', and 'he must move' is coded as 'ar du ba'. What is the code for the word 'must'?

- Ans ✗ 1. mu  
✗ 2. ar  
✓ 3. du  
✗ 4. ba

Question ID : 26433069469  
Status : Answered  
Chosen Option : 3



**Q.1** In a food chain, \_\_\_\_\_ can be taken as the average value for the amount of organic matter that is present at each step and reaches the next level of consumers.

- Ans**
- 1. 1%
  - 2. 0.01%
  - 3. 0.1%
  - 4. 10%

Question ID : 264330115197  
Status : Answered  
Chosen Option : 2

**Q.2** Who has been appointed as the second Chief of Defence Staff of India?

- Ans**
- 1. General Manoj Mukund Naravane
  - 2. Lieutenant General Anil Chauhan
  - 3. General Manoj Pande
  - 4. Lieutenant General Baggavalli Somashekar Raju

Question ID : 264330114978  
Status : Answered  
Chosen Option : 3

**Q.3** Electric current in a circuit is measured by \_\_\_\_\_.

- Ans**
- 1. voltmeter
  - 2. odometer
  - 3. potential meter
  - 4. ammeter

Question ID : 26433089645  
Status : Answered  
Chosen Option : 1

**Q.4** In 1986, an operation had to be conducted against terrorists in the Golden Temple. What was the name of this operation?

- Ans**
- 1. Operation Lightning Thunder
  - 2. Operation Thunder
  - 3. Operation Black Thunder
  - 4. Operation Rain and Thunder

Question ID : 264330115684  
Status : Not Answered  
Chosen Option : --

Q.5 In which year was the Rural Employment Generation Program launched in India?

Ans  1. 1995

2. 2000

3. 2004

4. 1997

Question ID : 264330116069  
Status : Answered  
Chosen Option : 3

Q.6 Natya Visharadha presented by His Excellency Shankar Dayal Sharma, in 1994 was given to \_\_\_\_\_.

Ans  1. Sunanda Nair

2. G. Padmaja Reddy

3. Shovana Narayan

4. Anuradha Pandey

Question ID : 264330115869  
Status : Not Answered  
Chosen Option : --

Q.7 When a national GST subsumed central taxes on July 1, 2017, how many petroleum goods were kept out of its purview for the time being?

Ans  1. Five

2. Four

3. Six

4. Three

Question ID : 264330116215  
Status : Not Answered  
Chosen Option : --

Q.8 Fa Xian began his journey back from \_\_\_\_\_.

Ans  1. Tibet

2. Madurai

3. Bengal

4. Patliputra

Question ID : 264330115450  
Status : Answered  
Chosen Option : 1

Q.9 Vishu is a \_\_\_\_\_ festival, celebrated primarily in the southern part of India.

- Ans
- 1. Buddhist
  - 2. Parsi
  - 3. Hindu
  - 4. Jain

Question ID : 26433094883  
Status : Answered  
Chosen Option : 4

Q.10 As of November 2022, who among the following is the Chief Minister of Jharkhand, India?

- Ans
- 1. Raghubar Das
  - 2. Pankaj Mishra
  - 3. Hemant Soren
  - 4. Amit Shah

Question ID : 264330114912  
Status : Answered  
Chosen Option : 3

Q.11 There were two Annual Programs implemented in India in 1990-91 and 1991-92 (between \_\_\_\_\_ five year plans).

- Ans
- 1. first and second
  - 2. third and fourth
  - 3. fifth and sixth
  - 4. seventh and eighth

Question ID : 264330115378  
Status : Not Answered  
Chosen Option : --

Q.12 In India, the 'Green Revolution' mainly started in the \_\_\_\_\_.

- Ans
- 1. 1950's
  - 2. 1980's
  - 3. 1970's
  - 4. 1960's

Question ID : 264330116149  
Status : Answered  
Chosen Option : 2

**Q.13 Which of the following is caused by Loo?**

- Ans
- 1. Hypothermia
  - 2. Frost Bite
  - 3. Heat Stroke
  - 4. Chilblains

Question ID : 264330115977  
Status : Answered  
Chosen Option : 1

**Q.14 Parliament consists of \_\_\_\_\_.**

- (i) President
- (ii) The Council of States
- (iii) The House of the People

- Ans
- 1. (i), (ii) and (iii)
  - 2. Both (i) and (iii)
  - 3. Both (ii) and (iii)
  - 4. Only (i)

Question ID : 26433089914  
Status : Answered  
Chosen Option : 2

**Q.15 Which schedule of Indian constitution contains languages of Republic of India?**

- Ans
- 1. 8
  - 2. 7
  - 3. 9
  - 4. 6

Question ID : 264330115610  
Status : Answered  
Chosen Option : 4

**Q.16 What happens in plantation farming?**

- Ans
- 1. single crop is grown
  - 2. multiple crops are grown
  - 3. only two crops are grown
  - 4. crop is rotated

Question ID : 264330115522  
Status : Answered  
Chosen Option : 2

Q.17 There are \_\_\_\_\_ hand gestures in Mohiniyattam which are mainly adopted from Hastalakshana Deepika text.

- Ans
- 1. 18
  - 2. 20
  - 3. 24
  - 4. 28

Question ID : 264330115061  
Status : Not Answered  
Chosen Option : --

Q.18 Milkha Singh, the Flying Sikh, was the first Indian to win a gold medal in which of the following games?

- Ans
- 1. Championship Series
  - 2. Asian Games
  - 3. Winter Olympics
  - 4. Commonwealth Games

Question ID : 26433089920  
Status : Answered  
Chosen Option : 4

Q.19 The Logo of 36th National Games of India contains a Picture of \_\_\_\_\_.

- Ans
- 1. Zebra
  - 2. Tiger
  - 3. Horse
  - 4. Lion

Question ID : 264330116283  
Status : Answered  
Chosen Option : 2

Q.20 Constitutional requirement to present the Annual Financial Statement before parliament is given in article \_\_\_\_\_ of the Constitution of India.

- Ans
- 1. 12
  - 2. 123
  - 3. 121
  - 4. 112

Question ID : 264330115275  
Status : Answered  
Chosen Option : 4

**Q.1** In a 100-metre race, A can beat B by 20 m and B can beat by C 10 m. In the same race, A can beat C by:

- Ans  1. 28 m  
 2. 30 m  
 3. 26 m  
 4. 20 m

Question ID : 26433073043  
Status : Answered  
Chosen Option : 2

**Q.2** A batsman scores 50, 56, 42, 38 and 78 in his 5 innings. How much does he need to score in his 6th inning to get his average to 60 in 6 innings?

- Ans  1. 90  
 2. 96  
 3. 100  
 4. 106

Question ID : 264330116682  
Status : Not Answered  
Chosen Option : --

**Q.3** Find the discount, if the marked price of book is Rs.500 and sold it for Rs. 400.

- Ans  1. Rs. 60  
 2. Rs. 100  
 3. Rs. 50  
 4. Rs. 200

Question ID : 264330116714  
Status : Answered  
Chosen Option : 2

**Q.4** Potato's per-kilogram price has risen from Rs.18 to Rs.25. What should be the percentage reduction in potato use so that expenditure does NOT increase?

- Ans  1. 28%  
 2. 31%  
 3. 22%  
 4. 34%

Question ID : 26433075846  
Status : Answered  
Chosen Option : 1

Q.5 The base diameter of a closed cylinder is 20 cm and its height is 11 cm. Find the total surface area of the cylinder.(Use  $\pi=22/7$ )

- Ans
- 1. 1330 cm<sup>2</sup>
  - 2. 1320 cm<sup>2</sup>
  - 3. 1325 cm<sup>2</sup>
  - 4. 1315 cm<sup>2</sup>

Question ID : 26433076311  
Status : Answered  
Chosen Option : 2

Q.6 The difference between the value of a number increased by 5 percent and the value of a number decreased by 15 percent is 9. What is the original number?

- Ans
- 1. 30
  - 2. 60
  - 3. 55
  - 4. 45

Question ID : 264330116819  
Status : Not Answered  
Chosen Option : --

Q.7  $3^5 + 3^6 + 3^7 + 3^8$  is completely divisible by

- Ans
- 1. 10
  - 2. 14
  - 3. 17
  - 4. 11

Question ID : 26433076301  
Status : Answered  
Chosen Option : 3

Q.8 The sides of a triangle are 5 cm, 12 cm and 13 cm. The area (in cm<sup>2</sup>) of the triangle formed by joining the mid-points of the sides of the triangle is:

- Ans
- 1. 7.5 cm<sup>2</sup>
  - 2. 21.5 cm<sup>2</sup>
  - 3. 15 cm<sup>2</sup>
  - 4. 30 cm<sup>2</sup>

Question ID : 26433087404  
Status : Answered  
Chosen Option : 1

**Q.9** When 20% of first number is added to second number, the second number increases by 50%. What is the ratio of the first number to the second number?

- Ans
- 1. 5 : 3
  - 2. 2 : 5
  - 3. 3 : 5
  - 4. 5 : 2

Question ID : 26433073126  
Status : Answered  
Chosen Option : 4

**Q.10** What will be the amount due on Rs.25,000 in 2 years when the rate of interest in successive years is 12% and 10% per annum respectively (interest is compounding annually)?

- Ans
- 1. Rs.30,800
  - 2. Rs.33,800
  - 3. Rs.28,000
  - 4. Rs.27,800

Question ID : 26433072971  
Status : Answered  
Chosen Option : 3

**Q.11** Prem can do a piece of work in 112 days. Ben can do this work in 90 days. Prem started the work alone. After how many days should Ben join him, so that the total work is finished in 56 days?

- Ans
- 1. 10 days
  - 2. 8 days
  - 3. 11 days
  - 4. 7 days

Question ID : 264330116899  
Status : Answered  
Chosen Option : 2

**Q.12** What is the fourth proportional to the numbers 10,16 and 20?

- Ans
- 1. 28
  - 2. 24
  - 3. 32
  - 4. 30

Question ID : 26433075670  
Status : Answered  
Chosen Option : 2



Q.13 The difference between the selling prices of an article available in two schemes of successive discounts 25% followed by 30%, and 25% followed by 20% is ₹75. Find the marked price of the article (in ₹).

- Ans
- 1. 900
  - 2. 1500
  - 3. 1200
  - 4. 1000

Question ID : 26433081570  
Status : Not Answered  
Chosen Option : --

Q.14 A watch is sold for Rs.15,000 at a loss of 25%. What is the cost price of the watch?

- Ans
- 1. Rs.18,500
  - 2. Rs.20,000
  - 3. Rs.16,000
  - 4. Rs.18,000

Question ID : 26433073084  
Status : Answered  
Chosen Option : 4

Q.15 Ajay can do a piece of work in 20 days and Vijay can do the same work in 22 days. In how many days they will complete the work together if they work on alternate days and the work is started by Vijay?

- Ans
- 1. 20
  - 2. 21
  - 3. 22
  - 4. 24

Question ID : 26433075956  
Status : Answered  
Chosen Option : 2

Q.16 Find the value of  $\frac{(0.0002)^2 + (0.0033)^2 + (0.0444)^2}{(0.00002)^2 + (0.00033)^2 + (0.00444)^2}$ .

- Ans
- 1. 100
  - 2. 80
  - 3. 90
  - 4. 110

Question ID : 26433091983  
Status : Answered  
Chosen Option : 4

Q.17 A faulty machine weighs 900 g as 1000 g. A shopkeeper uses this weighing machine to sell 45 kg of rice at Rs.65 per kg which he bought at Rs.58 per kg. His overall profit percentage is approximately equal to:

- Ans
- 1. 23.8%
  - 2. 18.9%
  - 3. 22.6%
  - 4. 24.5%

Question ID : 26433075315  
Status : Not Answered  
Chosen Option : --

Q.18 The value of a machine in a company depreciates by 10% every year. Determine the value (in Rs.) of the machine after 2 years if the current value is Rs.2 lakh.

- Ans
- 1. 1,64,000
  - 2. 1,80,000
  - 3. 1,60,000
  - 4. 1,62,000

Question ID : 26433071331  
Status : Answered  
Chosen Option : 2

Q.19 There are four sections: A, B, C and D of class X in a school. In every section, there are 30 students. The average score in maths of the four sections is 89.8, 92.6, 99.1 and 94.5, respectively. What is the average score in maths of the whole class X in that school?

- Ans
- 1. 96.8
  - 2. 95.0
  - 3. 92.5
  - 4. 94.0

Question ID : 26433075097  
Status : Answered  
Chosen Option : 2

Q.20 R runs for 10 hours at speeds of 10 km/h, 9 km/h, ..., 1 km/h, respectively, in the first hour, second hour, and so on. His average speed is \_\_\_\_\_ km/h.

- Ans
- 1. 4.5
  - 2. 5
  - 3. 6
  - 4. 5.5

Question ID : 26433071261  
Status : Answered  
Chosen Option : 2

Q.1 Select the word similar in meaning to the given word.

Skip

- Ans  1. Overlook  
 2. Insert  
 3. Notice  
 4. Introduce

Question ID : 26433088862  
Status : Answered  
Chosen Option : 1

Q.2 Select the most appropriate option that can substitute the underlined segment in the given sentence.

After studying the evidence thoroughly, the detective inferred the motive.

- Ans  1. unusually concealed  
 2. logically concluded  
 3. intensely disliked  
 4. violently criticised

Question ID : 26433099878  
Status : Answered  
Chosen Option : 2

Q.3 Select the most appropriate ANTONYM of the underlined word to fill in the blank.

The servile nature of the employees was contrary to the employer's \_\_\_\_\_ nature.

- Ans  1. dishonest  
 2. dominant  
 3. curious  
 4. furious

Question ID : 26433091847  
Status : Answered  
Chosen Option : 1

Q.4 Select the most appropriate ANTONYM of the given word.

Influence

- Ans  1. Impact  
 2. Stir  
 3. Effect  
 4. Deter

Question ID : 26433085199  
Status : Answered  
Chosen Option : 4

**Q.5** Parts of the given sentence have been given as options. One of them contains a spelling error. Select the option that rectifies the error.

Superbugs are the bacteria that have acquired resistance to several types of antibiotics either through genetic mutation or through buildup resistance over time.

- Ans
- 1. resistance
  - 2. bacteria
  - 3. mutattion
  - 4. acquired

Question ID : 26433072043  
Status : Answered  
Chosen Option : 1

**Q.6** Select the most appropriate meaning of the underlined idiom in the given sentence.

If the linguistic minority refuses to vote, it may rock the boat.

- Ans
- 1. Lead to protests
  - 2. Topple the government
  - 3. Upset the balance
  - 4. Restore the equilibrium

Question ID : 26433071995  
Status : Answered  
Chosen Option : 3

**Q.7** Select the option in which all the words are spelt correctly.

- Ans
- 1. Our school principal declared that the new rule was applicable to everyone.
  - 2. Our school principal declared that the new rule was applicale to everyone.
  - 3. Our school principal declared that the new rule was appleecable to everyone.
  - 4. Our school principal declared that the new rule was applikable to everyone.

Question ID : 26433072286  
Status : Answered  
Chosen Option : 1

**Q.8** Select the most appropriate option that can substitute the underlined segment in the given sentence.

My dad asked my mom to prepare lunch early as he was feeling very hungry.

- Ans
- 1. terrible
  - 2. exhausted
  - 3. starved
  - 4. tired

Question ID : 26433086459  
Status : Answered  
Chosen Option : 3

Q.9 Select the most appropriate option to fill in the blank.

Due to some technical emergency, the helicopter was supposed to land on a \_\_\_\_\_ (occupied) piece of land.

- Ans
- 1. jammed
  - 2. active
  - 3. vacant
  - 4. teeming

Question ID : 26433060719  
Status : Answered  
Chosen Option : 1

Q.10 Select the most appropriate synonym of the given word.

Amputate

- Ans
- 1. Brighten
  - 2. Energise
  - 3. Sever
  - 4. Argue

Question ID : 26433073463  
Status : Answered  
Chosen Option : 3

Q.11 Select the most appropriate synonym of the word given in brackets to fill in the blank.

His best friend \_\_\_\_\_ (disclose) his business secrets in the press conference.

- Ans
- 1. revealed
  - 2. deceived
  - 3. concealed
  - 4. superseded

Question ID : 26433084720  
Status : Answered  
Chosen Option : 1

Q.12 The following sentence has been split into four segments. Identify the segment that contains a grammatical error.

The policeman / walk along the / road when I saw / a body in the gutter.

- Ans
- 1. walk along the
  - 2. a body in the gutter
  - 3. The policeman
  - 4. road when I saw

Question ID : 26433092276  
Status : Answered  
Chosen Option : 1

Q.13 Select the most appropriate meaning of the given idiom.

Once in a blue moon

- Ans  1. Very rarely  
 2. To agree reluctantly  
 3. A quick response  
 4. Moon in the night

Question ID : 26433073705  
Status : Answered  
Chosen Option : 1

Q.14 Select the most appropriate ANTONYM of the given word.

Rival

- Ans  1. Employer  
 2. Comrade  
 3. Opponent  
 4. Antagonist

Question ID : 26433072206  
Status : Answered  
Chosen Option : 2

Q.15 Select the most appropriate option to fill in the blank.

One should never \_\_\_\_\_ from pals or activities that formerly provided solace.

- Ans  1. remove  
 2. withdraw  
 3. suspend  
 4. deduct

Question ID : 26433073617  
Status : Answered  
Chosen Option : 1

**Comprehension:**

In the following passage, some words have been deleted. Read the passage carefully and select the most appropriate option to fill in each blank.

One of the (1) \_\_\_\_\_ that Elizabeth had to attend was ballet, and she loathed it. She would stuff (2) \_\_\_\_\_ into her pink tut, and stare at her (3) \_\_\_\_\_ in the mirror and try to tell herself that she was not made for dance. But the truth was (4) \_\_\_\_\_ for her to see. She was having two left feet. She (5) \_\_\_\_\_ never be a ballet dancer.

**SubQuestion No : 16**

**Q.16 Select the most appropriate option to fill in blank number 1.**

- Ans
- 1. Seminars
  - 2. lectures
  - 3. classes
  - 4. Meetings

Question ID : 26433071904  
Status : Answered  
Chosen Option : 4

**Comprehension:**

In the following passage, some words have been deleted. Read the passage carefully and select the most appropriate option to fill in each blank.

One of the (1) \_\_\_\_\_ that Elizabeth had to attend was ballet, and she loathed it. She would stuff (2) \_\_\_\_\_ into her pink tut, and stare at her (3) \_\_\_\_\_ in the mirror and try to tell herself that she was not made for dance. But the truth was (4) \_\_\_\_\_ for her to see. She was having two left feet. She (5) \_\_\_\_\_ never be a ballet dancer.

**SubQuestion No : 17**

**Q.17 Select the most appropriate option to fill in blank number 2.**

- Ans
- 1. oneself
  - 2. himself
  - 3. herself
  - 4. Ourselves

Question ID : 26433071905  
Status : Answered  
Chosen Option : 3

**Comprehension:**

In the following passage, some words have been deleted. Read the passage carefully and select the most appropriate option to fill in each blank.

One of the (1) \_\_\_\_\_ that Elizabeth had to attend was ballet, and she loathed it. She would stuff (2) \_\_\_\_\_ into her pink tut, and stare at her (3) \_\_\_\_\_ in the mirror and try to tell herself that she was not made for dance. But the truth was (4) \_\_\_\_\_ for her to see. She was having two left feet. She (5) \_\_\_\_\_ never be a ballet dancer.

**SubQuestion No : 18**

**Q.18 Select the most appropriate option to fill in blank number 3.**

- Ans
- 1. photograph
  - 2. Sketch
  - 3. Painting
  - 4. image

Question ID : 26433071906  
Status : Answered  
Chosen Option : 4

**Comprehension:**

In the following passage, some words have been deleted. Read the passage carefully and select the most appropriate option to fill in each blank.

One of the (1) \_\_\_\_\_ that Elizabeth had to attend was ballet, and she loathed it. She would stuff (2) \_\_\_\_\_ into her pink tut, and stare at her (3) \_\_\_\_\_ in the mirror and try to tell herself that she was not made for dance. But the truth was (4) \_\_\_\_\_ for her to see. She was having two left feet. She (5) \_\_\_\_\_ never be a ballet dancer.

**SubQuestion No : 19**

**Q.19 Select the most appropriate option to fill in blank number 4.**

- Ans
- 1. their
  - 2. there
  - 3. Therein
  - 4. Here

Question ID : 26433071907  
Status : Answered  
Chosen Option : 2



**Comprehension:**

In the following passage, some words have been deleted. Read the passage carefully and select the most appropriate option to fill in each blank.

One of the (1) \_\_\_\_\_ that Elizabeth had to attend was ballet, and she loathed it. She would stuff (2) \_\_\_\_\_ into her pink tut, and stare at her (3) \_\_\_\_\_ in the mirror and try to tell herself that she was not made for dance. But the truth was (4) \_\_\_\_\_ for her to see. She was having two left feet. She (5) \_\_\_\_\_ never be a ballet dancer.

**SubQuestion No : 20**

**Q.20** Select the most appropriate option to fill in blank number 5.

- Ans  1. Ever  
 2. would  
 3. can't  
 4. won't

Question ID : 26433071908  
Status : Answered  
Chosen Option : 2

## Section : Part-D-Hindi

**Q.1** निम्नलिखित मुहावरे के सही अर्थ का चयन विकल्पों में से कीजिए।  
भूजी भांग न होना

- Ans  1. संदेह की स्थिति में होना  
 2. सबसे परे रहना  
 3. अत्यंत दरिद्र होना  
 4. कष्ट झेलना

Question ID : 26433070010  
Status : Not Answered  
Chosen Option : --

**Q.2** निम्नलिखित विकल्पों में से किस एक वाक्य में क्रिया सम्बन्धी अशुद्धि है?

- Ans  1. मैंने पानी पी लिया।  
 2. आज मैंने भरपेट खाया।  
 3. बहुत दिनों बाद आज उसने मुझे देखा।  
 4. मैं उसे सहायता देना चाहता हूँ।

Question ID : 26433062946  
Status : Not Answered  
Chosen Option : --

**Q.3** 'छक्के छुड़ाना' मुहावरे का अर्थ क्या है?

- Ans  1. बुरी तरह हराना  
 2. बहुत मेहनत करना  
 3. काम आसान करना  
 4. मैच में छक्का लगाना

Question ID : 26433066805  
Status : Not Answered  
Chosen Option : --

Q.4 'भौरे गाते गुनगुन गाना।' विकल्पों में दिया गया कौन सा शब्द उक्त वाक्य में प्रयुक्त 'भौरे' शब्द का पर्यायवाची नहीं है?

- Ans  1. शफरी  
 2. मधुप  
 3. अलि  
 4. भ्रमर

Question ID : 26433069736  
Status : Not Answered  
Chosen Option : --

Q.5 निम्न में से 'सरस्वती' का पर्याय नहीं है-

- Ans  1. वागेश्वरी  
 2. भारती  
 3. शारदा  
 4. दामिनी

Question ID : 26433062158  
Status : Not Answered  
Chosen Option : --

Q.6 निम्न वाक्य के रिक्त स्थान की पूर्ति कोष्ठक में दिए गए शब्द के विकल्पों में दिए गए सही विलोम शब्द से कीजिए।  
समुद्र का विस्तार \_\_\_\_\_ है। (ससीम)

- Ans  1. सीमा  
 2. अवशेष  
 3. असीम  
 4. अवलंबित

Question ID : 26433085178  
Status : Not Answered  
Chosen Option : --

Q.7 निम्नलिखित वाक्यांश के लिए सार्थक शब्द चुनिए।  
आवश्यकता से अधिक बरसात

- Ans  1. अनावृष्टि  
 2. अल्पवृष्टि  
 3. अतिवृष्टि  
 4. अतिक्रमण

Question ID : 26433069980  
Status : Not Answered  
Chosen Option : --

Q.8 निम्नलिखित वाक्य में रेखांकित एकार्थी शब्दों के अर्थ बताइए।  
व्यक्ति के जीवन में 'शम' होनी चाहिए और उसके व्यवहार में 'सम' होना अति आवश्यक है।

- Ans  1. शांति-समान  
 2. कुछ-भाग  
 3. समान-गणित का प्रश्न  
 4. श्याम-रात

Question ID : 26433091329  
Status : Not Answered  
Chosen Option : --

Q.9 निम्न वाक्य में रेखांकित अंश के स्थान पर आने वाले सबसे उपयुक्त विकल्प का चयन कीजिए।  
इस गीत की दो चार लड़ियाँ सुना दो।

- Ans  1. कविता  
 2. कड़ियाँ  
 3. लाईन  
 4. शब्द

Question ID : 26433066867  
Status : Not Answered  
Chosen Option : --

Q.10 निम्न में से किस वाक्य में 'खग' के सही अनेकार्थी शब्द का प्रयोग हुआ है?

- Ans  1. किशोर दुष्ट लड़का है।  
 2. सुहास की भाषा अत्यंत दुर्बोध है।  
 3. पक्षी कलरव कर रहे हैं।  
 4. वह बहुत बड़ा डाकू था।

Question ID : 26433085145  
Status : Not Answered  
Chosen Option : --

Q.11 निम्न वाक्य को अधिकरण कारक के अनुसार शुद्ध कीजिए।  
कपड़े छत को सूख रहे हैं।

- Ans  1. कपड़े छत के अनुसार सूख रहे हैं।  
 2. कपड़े छत पर सूख रहे हैं।  
 3. कपड़े छत के सूख रहे हैं।  
 4. कपड़े छत से सूख रहे हैं।

Question ID : 26433063034  
Status : Not Answered  
Chosen Option : --

Q.12 संयुक्त वाक्य - 'शिक्षा साध्य नहीं है, साधन है।' निम्नलिखित विकल्पों में से इस वाक्य के लिए कौन सा एक उचित सरल वाक्य होगा?

- Ans
- 1. शिक्षा एक साधन है।
  - 2. शिक्षा माध्यम नहीं साधन है।
  - 3. शिक्षा साधन है।
  - 4. शिक्षा साध्य न होकर साधन है।

Question ID : 26433062443  
Status : Not Answered  
Chosen Option : --

Q.13 निम्नलिखित वाक्य के किस भाग में त्रुटि है?  
'मेरी समझ में नहीं आ रहा है कि आपके द्वारा इतने परिश्रम से कमाया गया यह धन अखिर किस काम में आएगा।'

- Ans
- 1. कमाया गया यह धन
  - 2. कि आपके द्वारा इतने परिश्रम से
  - 3. मेरी समझ में नहीं आ रहा है
  - 4. अखिर किस काम में आएगा।

Question ID : 26433063024  
Status : Not Answered  
Chosen Option : --

Q.14 निम्नलिखित वाक्यांश के लिए उपयुक्त सार्थक शब्द का चयन विकल्पों में से कीजिए।  
वह बात जिसे सुना नहीं गया हो

- Ans
- 1. नासुना
  - 2. सुनासुना
  - 3. सुना
  - 4. अनसुनी

Question ID : 26433073313  
Status : Not Answered  
Chosen Option : --

Q.15 निम्नलिखित वाक्य के किस शब्द में अशुद्धि है?  
इसी कारण देश में अशांति बढ़ रही है।

- Ans
- 1. बढ़
  - 2. अशांति
  - 3. देश
  - 4. कारण

Question ID : 26433066768  
Status : Not Answered  
Chosen Option : --

**Comprehension:**

निम्नलिखित गद्यांश में कुछ शब्दों को हटा दिया गया है। दिए गए विकल्पों की सहायता से रिक्त स्थानों की पूर्ति कीजिए। प्रत्येक संख्या के लिए सबसे उपयुक्त विकल्प का चयन कीजिए।  
वर्तमान युग विज्ञान का युग है। वैज्ञानिक 1. \_\_\_\_\_ ने हमारे जीवन को सुखी बनाया है। वहीं दूसरी ओर समाज के सम्मुख अनेक समस्याएं भी 2. \_\_\_\_\_ की हैं। इनमें प्रदूषण की समस्या अत्यंत 3. \_\_\_\_\_ है। इसका अर्थ है 4. \_\_\_\_\_ का दूषित होना। वस्तुतः हम सभी प्रकृति के संतुलन में 5. \_\_\_\_\_ व्यतीत करते हैं।

**SubQuestion No : 16**

Q.16 रिक्त स्थान 1 की पूर्ति के लिए सबसे उपयुक्त विकल्प का चयन कीजिए।

- Ans
- 1. समस्या
  - 2. तिरस्कारों
  - 3. असंतुलन
  - 4. आविष्कारों

Question ID : 264330110969

Status : Not Answered

Chosen Option : --

**Comprehension:**

निम्नलिखित गद्यांश में कुछ शब्दों को हटा दिया गया है। दिए गए विकल्पों की सहायता से रिक्त स्थानों की पूर्ति कीजिए। प्रत्येक संख्या के लिए सबसे उपयुक्त विकल्प का चयन कीजिए।  
वर्तमान युग विज्ञान का युग है। वैज्ञानिक 1. \_\_\_\_\_ ने हमारे जीवन को सुखी बनाया है। वहीं दूसरी ओर समाज के सम्मुख अनेक समस्याएं भी 2. \_\_\_\_\_ की हैं। इनमें प्रदूषण की समस्या अत्यंत 3. \_\_\_\_\_ है। इसका अर्थ है 4. \_\_\_\_\_ का दूषित होना। वस्तुतः हम सभी प्रकृति के संतुलन में 5. \_\_\_\_\_ व्यतीत करते हैं।

**SubQuestion No : 17**

Q.17 रिक्त स्थान 2 की पूर्ति के लिए सबसे उपयुक्त विकल्प का चयन कीजिए।

- Ans
- 1. परीक्षण
  - 2. बढ़ते
  - 3. त्रस्त
  - 4. उत्पन्न

Question ID : 264330110970

Status : Not Answered

Chosen Option : --

**Comprehension:**

निम्नलिखित गद्यांश में कुछ शब्दों को हटा दिया गया है। दिए गए विकल्पों की सहायता से रिक्त स्थानों की पूर्ति कीजिए। प्रत्येक संख्या के लिए सबसे उपयुक्त विकल्प का चयन कीजिए।  
वर्तमान युग विज्ञान का युग है। वैज्ञानिक 1. \_\_\_\_\_ ने हमारे जीवन को सुखी बनाया है। वहीं दूसरी ओर समाज के सम्मुख अनेक समस्याएं भी 2. \_\_\_\_\_ की हैं। इनमें प्रदूषण की समस्या अत्यंत 3. \_\_\_\_\_ है। इसका अर्थ है 4. \_\_\_\_\_ का दूषित होना। वस्तुतः हम सभी प्रकृति के संतुलन में 5. \_\_\_\_\_ व्यतीत करते हैं।

**SubQuestion No : 18**

Q.18 रिक्त स्थान 3 की पूर्ति के लिए सबसे उपयुक्त विकल्प का चयन कीजिए।

- Ans
- 1. तात्पर्य
  - 2. प्रभावित
  - 3. गंभीर
  - 4. व्यवस्थित

Question ID : 264330110971

Status : Not Answered

Chosen Option : --

**Comprehension:**

निम्नलिखित गद्यांश में कुछ शब्दों को हटा दिया गया है। दिए गए विकल्पों की सहायता से रिक्त स्थानों की पूर्ति कीजिए। प्रत्येक संख्या के लिए सबसे उपयुक्त विकल्प का चयन कीजिए।  
वर्तमान युग विज्ञान का युग है। वैज्ञानिक 1. \_\_\_\_\_ ने हमारे जीवन को सुखी बनाया है। वहीं दूसरी ओर समाज के सम्मुख अनेक समस्याएं भी 2. \_\_\_\_\_ की हैं। इनमें प्रदूषण की समस्या अत्यंत 3. \_\_\_\_\_ है। इसका अर्थ है 4. \_\_\_\_\_ का दूषित होना। वस्तुतः हम सभी प्रकृति के संतुलन में 5. \_\_\_\_\_ व्यतीत करते हैं।

**SubQuestion No : 19**

Q.19 रिक्त स्थान 4 की पूर्ति के लिए सबसे उपयुक्त विकल्प का चयन कीजिए।

- Ans
- 1. जीवन
  - 2. कारखानों
  - 3. वातावरण
  - 4. नगरों

Question ID : 264330110972

Status : Not Answered

Chosen Option : --

**Comprehension:**

निम्नलिखित गद्यांश में कुछ शब्दों को हटा दिया गया है। दिए गए विकल्पों की सहायता से रिक्त स्थानों की पूर्ति कीजिए। प्रत्येक संख्या के लिए सबसे उपयुक्त विकल्प का चयन कीजिए।  
वर्तमान युग विज्ञान का युग है। वैज्ञानिक 1. \_\_\_\_\_ ने हमारे जीवन को सुखी बनाया है। वहीं दूसरी ओर समाज के सम्मुख अनेक समस्याएँ भी 2. \_\_\_\_\_ की हैं। इनमें प्रदूषण की समस्या अत्यंत 3. \_\_\_\_\_ है। इसका अर्थ है 4. \_\_\_\_\_ का दूषित होना। वस्तुतः हम सभी प्रकृति के संतुलन में 5. \_\_\_\_\_ व्यतीत करते हैं।

**SubQuestion No : 20**

**Q.20** रिक्त स्थान 5 की पूर्ति के लिए सबसे उपयुक्त विकल्प का चयन कीजिए।

- Ans
- 1. युग
  - 2. सुख-साधन
  - 3. सुख
  - 4. जीवन

Question ID : 264330110973

Status : Not Answered

Chosen Option : --

KD Job Updates

## Constable GD in CAPFs SSF Rifleman GD in Assam Rifles and Sepoy in NCB Examination 2022

Roll Number	@Qmaths Telegram Channel
Candidate Name	@Qmaths Telegram Channel
Venue Name	ION Digital Zone iDZ 1 Sector 62
Exam Date	08/02/2023
Exam Time	5:15 PM - 6:15 PM
Subject	Constable GD Examination 2022

### Section : Part-A-General Intelligence and Reasoning

Q.1 एक कूट भाषा में, 'we must stop' को 'po ba hu', 'stop this noise' को 'hu va xi', 'you must come' को 'nu ba ka', और 'you come forward' को 'nu ka co' के रूप में कूटबद्ध किया जाता है। शब्द 'forward' के लिए कूट क्या होगा?

Ans ✓ 1. co

✗ 2. po

✗ 3. nu

✗ 4. hu

Question ID : 26433069471

Status : Answered

Chosen Option : 1

Q.2 सात व्यक्ति E, F, G, H, I, J और K एक सीधी पंक्ति में उत्तर की ओर मुख करके बैठे हैं। K, H के बाईं ओर तीसरे स्थान पर बैठा है। F और I के बीच कोई नहीं बैठा है। H, J के दाईं ओर चौथे स्थान पर बैठा है। I के दाईं ओर कोई नहीं बैठा है। F, E के दाईं ओर तीसरे स्थान पर बैठा है। पंक्ति के दाएं सिरे से तीसरे स्थान पर कौन बैठा है?

Ans ✓ 1. H

✗ 2. I

✗ 3. F

✗ 4. G

Question ID : 26433068284

Status : Not Answered

Chosen Option : --

Q.3 A # B का अर्थ है 'A, B का भाई है'  
A @ B का अर्थ है 'A, B की पुत्री है'  
A & B का अर्थ है 'A, B का पति है'  
A % B का अर्थ है 'A, B की पत्नी है'  
A \* B का अर्थ है 'A, B का पुत्र है'  
यदि A&D@Q\*B\*K है, तो D, K से किस प्रकार संबंधित है?

Ans ✗ 1. पोता

✗ 2. पोती

✗ 3. पुत्री

✓ 4. परपोती

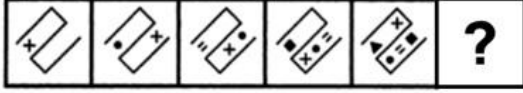
Question ID : 26433082534

Status : Answered

Chosen Option : 2



Q.4 दिए गए विकल्पों में से उस आकृति का चयन करें जो निम्नलिखित श्रृंखला में प्रश्नवाचक चिह्न (?) का स्थान ले सकती है।



Ans

- ✓ 1.
- ✗ 2.
- ✗ 3.
- ✗ 4.

Question ID : 26433080497  
Status : Answered  
Chosen Option : 1

Q.5 उस विकल्प का चयन करें, जो पाँचवीं संख्या से उसी प्रकार संबंधित है, जिस प्रकार दूसरी संख्या, पहली संख्या से संबंधित है और चौथी संख्या, तीसरी संख्या से संबंधित है।  
49 : 10 :: 81 : 12 :: 64 : ?

- ✓ 1. 11
- ✗ 2. 7
- ✗ 3. 9
- ✗ 4. 8

Question ID : 26433069411  
Status : Answered  
Chosen Option : 1

Q.6 तीन कथनों के बाद 1, 2 और 3 से संख्यांकित तीन निष्कर्ष दिए गए हैं। कथनों को सत्य मानते हुए भले ही वे सामान्यतः ज्ञात तथ्यों से भिन्न प्रतीत होते हों, निर्णय लें कि कौन-सा/से निष्कर्ष कथनों का तार्किक रूप से अनुसरण करता है/करते हैं।

कथन:

- कुछ बेट बॉल हैं।  
कुछ बॉल रिग हैं।  
कोई रिग बेल नहीं है।

निष्कर्ष:

1. कोई बेल बॉल नहीं है।  
2. कोई रिग बेट नहीं है।  
3. कुछ बॉल बेट हैं।

- Ans ✓ 1. केवल निष्कर्ष 3 अनुसरण करता है
- ✗ 2. केवल निष्कर्ष 1 और 3 अनुसरण करते हैं
- ✗ 3. केवल निष्कर्ष 2 अनुसरण करता है
- ✗ 4. केवल निष्कर्ष 1 और 2 अनुसरण करते हैं

Question ID : 26433087131  
Status : Not Answered  
Chosen Option : --

Q.7 आमिर, बंटी, लेस्ली, प्रदीप, ईशान, फैज, गौरव और हरीश एक वर्गाकार मेज के चारों ओर मेज के केंद्र की ओर मुख करके बैठे हैं। उनमें से कुछ मेज के कोनों पर बैठे हैं, जबकि कुछ मेज की भुजाओं के ठीक मध्य में बैठे हुए हैं। प्रदीप, गौरव के दाईं ओर तीसरे स्थान पर बैठा है। प्रदीप एक कोने पर बैठा है। बंटी, फैज के दाईं ओर दूसरे स्थान पर बैठा है। फैज, किसी भी कोने पर नहीं बैठा है। बंटी, प्रदीप के ठीक बगल में नहीं बैठा है। हरीश, आमिर के ठीक बगल में बैठा है। हरीश मेज की किसी भी भुजा के मध्य में नहीं बैठा है। हरीश और लेस्ली के बीच केवल एक व्यक्ति बैठा है। बंटी के बाईं ओर दूसरे स्थान पर कौन बैठा/बैठी है?

- Ans
- 1. प्रदीप
  - 2. ईशान
  - 3. गौरव
  - 4. फैज

Question ID : 26433082285  
Status : Not Answered  
Chosen Option : --

Q.8 निम्नलिखित में से कौन-सी संख्या दी गई श्रृंखला में प्रश्न-चिह्न (?) के स्थान पर आएगी?  
5, 11, 35, 143, ?

- Ans
- 1. 719
  - 2. 316
  - 3. 639
  - 4. 512

Question ID : 26433082005  
Status : Not Answered  
Chosen Option : --

Q.9 नीचे दिए गए समीकरण को गणितीय रूप से सही बनाने के लिए किन दो चिन्हों को परस्पर बदलना चाहिए?

$$64 - 16 \times 24 \div 96 + 10 = 58$$

- Ans
- 1. - और +
  - 2. ÷ और ×
  - 3. ÷ और -
  - 4. × और -

Question ID : 264330117544  
Status : Answered  
Chosen Option : 1

Q.10 निम्नलिखित में से कौन-सी संख्या दी गई श्रृंखला में प्रश्न-चिह्न (?) को प्रतिस्थापित करेगी?  
42, 43, 41, 44, ?, 45

- Ans
- 1. 45
  - 2. 36
  - 3. 42
  - 4. 40

Question ID : 26433083120  
Status : Answered  
Chosen Option : 3

Q.11 एक निश्चित कूट भाषा में 'EARNED' को '94' के रूप में लिखा जाता है, 'GAINED' को '80' के रूप में लिखा जाता है, तो उसी भाषा में 'DOLLAR' को किस प्रकार से लिखा जाएगा?

- Ans
- 1. 98
  - 2. 111
  - 3. 68
  - 4. 124

Question ID : 26433083114  
Status : Answered  
Chosen Option : 4

Q.12 दिए गए समीकरण को संतुलित करने के लिए इसके किन दो गणितीय चिह्नों को परस्पर बदलना होगा?  
 $25 \times 5 \div 6 + 20 = 62 - 12$

- Ans
- 1. + और +
  - 2. ÷ और ×
  - 3. + और ×
  - 4. + और -

Question ID : 26433087048  
Status : Answered  
Chosen Option : 2

Q.13 कौन-सा अक्षर-समूह दी गई श्रृंखला में प्रश्नचिह्न (?) के स्थान पर आकर श्रृंखला को पूर्ण करेगा?  
YWTZ, UTRY, ?, MNNW, IKLV

- Ans
- 1. QQPX
  - 2. QSRV
  - 3. PSRY
  - 4. QRQX

Question ID : 26433068577  
Status : Answered  
Chosen Option : 1

Q.14 निम्नलिखित में से कौन-सा अक्षर-समूह दी गई श्रृंखला में प्रश्न-चिह्न (?) के स्थान पर आएगा?  
DGIL, GJLO, JMOR, ?, PSUX

- Ans
- 1. MPRU
  - 2. NPRV
  - 3. MQRU
  - 4. NPQU

Question ID : 26433076448  
Status : Answered  
Chosen Option : 1

Q.15 उस विकल्प का चयन कीजिए, जो पाँचवें अक्षर-समूह से उसी प्रकार संबंधित है, जिस प्रकार दूसरा अक्षर-समूह पहले अक्षर-समूह से संबंधित है और चौथा अक्षर-समूह तीसरे अक्षर-समूह से संबंधित है।  
PRODUCT : CDOPRTU :: CONFUSE : CEFNOSU :: QUALITY : ?

- Ans
- 1. ALITQUY
  - 2. AIULQTY
  - 3. AILQUTY
  - 4. AILQTUY

Question ID : 26433082630  
Status : Not Answered  
Chosen Option : --

Q.16 दी गई आकृति के सही दर्पण प्रतिबिम्ब का चयन करें जब दर्पण को MN पर रखा जाए जैसा कि नीचे

दर्शाया गया है।



Ans

- ✓ 1. euRoPEan
- ✗ 2. eURoPEan
- ✗ 3. eURoPEan
- ✗ 4. euRoPEan

Question ID : 2643308555

Status : Answered

Chosen Option : 1

Q.17 उस विकल्प का चयन कीजिए जो तीसरे शब्द से उसी प्रकार संबंधित है जिस प्रकार दूसरा शब्द पहले शब्द से संबंधित है। (शब्दों को अर्थपूर्ण शब्दों के रूप में मानना है और उन्हें शब्द में अक्षरों/व्यंजनों/स्वरों की संख्या के आधार पर एक-दूसरे से संबंधित नहीं करना है।)  
वैज्ञानिक : प्रयोगशाला :: खगोल विज्ञानी : ?

Ans

- ✗ 1. पर्यावरण
- ✗ 2. विश्वविद्यालय
- ✗ 3. पेशा
- ✓ 4. वेधशाला

Question ID : 26433067364

Status : Answered

Chosen Option : 4

Q.18 किस विकल्प में निम्नलिखित शब्दों का वह क्रम दिया गया है, जिस क्रम में वे अंग्रेजी शब्दकोश में आते हैं?

- 1 Nothing  
2 Notebook  
3 Notable  
4 Notary  
5 Nominal

Ans

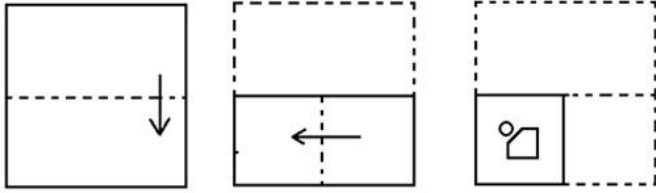
- ✗ 1. 5,1,2,3,4
- ✓ 2. 5,3,4,2,1
- ✗ 3. 5,2,3,1,4
- ✗ 4. 5,4,3,2,1

Question ID : 26433069320

Status : Answered

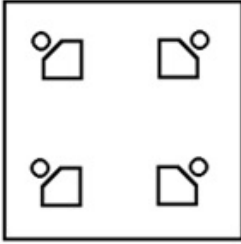
Chosen Option : 2

Q.19 एक कागज को मोड़ने का क्रम और मुड़े हुए कागज को काटने का तरीका नीचे दर्शाया गया है। उस आकृति का चयन करें जो कागज को खोले जाने पर उसके खुले रूप से सबसे अधिक मिलती-जुलती है।

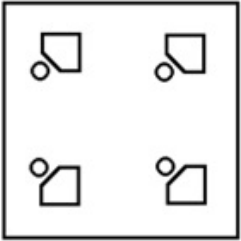


Ans

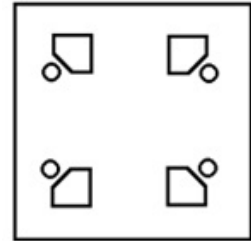
✗ 1.



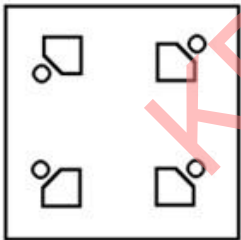
✗ 2.



✓ 3.



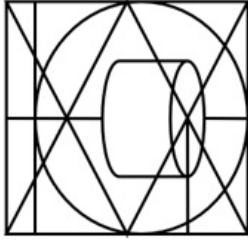
✗ 4.



Question ID : 26433087100  
 Status : Answered  
 Chosen Option : 2

Q.20 उस विकल्प-आकृति का चयन कीजिए, जो प्रस्तुत आकृति में अंतर्निहित है।

(घुमाना अनुमन्य नहीं है)



Ans

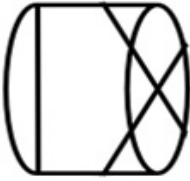
✗ 1.



✗ 2.



✗ 3.



✓ 4.



Question ID : 26433076581

Status : Answered

Chosen Option : 4

Section : Part-B-General Knowledge and General awareness

Q.1 निम्नलिखित में से किसने जून 2022 में क्रेडिट लिंकड सरकारी योजनाओं के लिए राष्ट्रीय पोर्टल - जन समर्थ पोर्टल लॉन्च किया?

Ans ✗ 1. स्मृति ईरानी

✗ 2. निर्मला सीतारमण

✓ 3. नरेन्द्र मोदी

✗ 4. पीयूष गोयल

Question ID : 264330114951

Status : Answered

Chosen Option : 3

Q.2 भारत में हरित क्रांति किस दशक में आई थी?

- Ans
- 1. 1850-1860
  - 2. 1800-1810
  - 3. 1960-1970
  - 4. 1900-1910

Question ID : 264330115413  
Status : Answered  
Chosen Option : 3

Q.3 हरित क्रांति के पहले चरण में, HYV बीजों का उपयोग अधिक समृद्ध राज्यों तक ही सीमित था। निम्नलिखित में से कौन इस सूची में शामिल नहीं था?

- Ans
- 1. तमिलनाडु
  - 2. कर्नाटक
  - 3. पंजाब
  - 4. आंध्र प्रदेश

Question ID : 264330116151  
Status : Not Answered  
Chosen Option : --

Q.4 कबड्डी मैच की अवधि कितने मिनट की होती है?

- Ans
- 1. 50 मिनट
  - 2. 30 मिनट
  - 3. 40 मिनट
  - 4. 45 मिनट

Question ID : 264330115931  
Status : Answered  
Chosen Option : 4

Q.5 लैथेनाइड्स कितने तत्वों की एक श्रृंखला है?

- Ans
- 1. 10
  - 2. 18
  - 3. 12
  - 4. 15

Question ID : 264330115170  
Status : Answered  
Chosen Option : 2

Q.6 प्रिंस शुद्धेंद्र नारायण सिंह देव को \_\_\_\_\_ नृत्य में उनके योगदान के लिए संगीत नाटक अकादमी पुरस्कार से सम्मानित किया गया है।

- Ans
- 1. छऊ
  - 2. कथकली
  - 3. कथक
  - 4. मोहिनीअट्टम

Question ID : 264330115871  
Status : Not Answered  
Chosen Option : --

Q.7 उधम सिंह ने किसकी हत्या की थी?

- Ans  1. माइकल ओ डायर  
 2. रेजिनाल्ड डायर  
 3. सिडनी रोलेट  
 4. जॉन साइमन

Question ID : 264330115721  
Status : Answered  
Chosen Option : 1

Q.8 क्रिकेट मैच में कितने फील्ड अंपायर होते हैं?

- Ans  1. 3  
 2. 2  
 3. 1  
 4. 4

Question ID : 264330116285  
Status : Answered  
Chosen Option : 1

Q.9 लोकसभा के अध्यक्ष को कौन चुनता है?

- Ans  1. लोकसभा के सभी सदस्य  
 2. भारत के राष्ट्रपति  
 3. प्रधानमंत्री और उनकी कैबिनेट  
 4. केवल सत्ताधारी दल के लोकसभा के सदस्य

Question ID : 26433090677  
Status : Answered  
Chosen Option : 1

Q.10 'माघी' भारत के निम्नलिखित में से किस त्योहार का एक अन्य नाम है?

- Ans  1. बिहु  
 2. मकर संक्रांति  
 3. बैसाखी  
 4. बसंत पंचमी

Question ID : 26433094886  
Status : Not Answered  
Chosen Option : --

Q.11 टेलीफोन, सेलुलर टेलीकॉम, पेजर, टेलीफोन एक्सचेंज और रडार किस उद्योग के उदाहरण हैं?

- Ans  1. सीमेंट उद्योग  
 2. रसायन उद्योग  
 3. ऑटोमोबाइल उद्योग  
 4. सूचना प्रौद्योगिकी एवं इलेक्ट्रॉनिक्स उद्योग

Question ID : 264330115578  
Status : Answered  
Chosen Option : 4



Q.12 भारत में स्थित एकमात्र निश्चित रूप से सक्रिय ज्वालामुखी, बैरेन द्वीप ज्वालामुखी, अंडमान द्वीप में \_\_\_\_\_ से लगभग 138 km उत्तर पूर्व में स्थित है।

- Ans
- 1. फेरारगंज
  - 2. दिगलिपुर
  - 3. एबरडीन
  - 4. पोर्ट ब्लेयर

Question ID : 26433092215  
Status : Answered  
Chosen Option : 1

Q.13 निम्नलिखित में से किसके कार्यकाल के दौरान स्वर्ण सिंह समिति का गठन किया गया था?

- Ans
- 1. मनमोहन सिंह
  - 2. वी.पी. सिंह
  - 3. मोरारजी देसाई
  - 4. इंदिरा गांधी

Question ID : 26433090667  
Status : Answered  
Chosen Option : 1

Q.14 \_\_\_\_\_ में, भारतीय संसद ने नागरिकता (संशोधन) अधिनियम (CAA) कानून पारित किया।

- Ans
- 1. जनवरी 2019
  - 2. दिसंबर 2019
  - 3. दिसंबर 2018
  - 4. जनवरी 2018

Question ID : 264330116217  
Status : Answered  
Chosen Option : 2

Q.15 भारतीय जनता पार्टी से संबंधित मणिपुर के पहले मुख्यमंत्री कौन बने?

- Ans
- 1. नोंगथोम्बम बीरेन सिंह
  - 2. ओकराम इबोबी सिंह
  - 3. लोंगजाम थम्बू सिंह
  - 4. मनोहर पर्रिकर

Question ID : 264330115034  
Status : Not Answered  
Chosen Option : --

Q.16 \_\_\_\_\_ देश के विदेशी मुद्रा भंडार का संरक्षक है और उनके निवेश के प्रबंधन की जिम्मेदारी निहित है।

- Ans
- 1. भारतीय स्टेट बैंक
  - 2. वाणिज्य और उद्योग मंत्रालय
  - 3. वित्त मंत्रालय
  - 4. भारतीय रिजर्व बैंक

Question ID : 264330115331  
Status : Answered  
Chosen Option : 4

Q.17 महात्मा गांधी राष्ट्रीय ग्रामीण रोजगार गारंटी अधिनियम (MGNREGA) के अनुसार प्रस्तावित नौकरियों का कितना भाग महिलाओं के लिए आरक्षित किया गया है?

- Ans  1. एक तिहाई  
 2. आधा  
 3. एक चौथाई  
 4. दो तिहाई

Question ID : 264330116071  
Status : Answered  
Chosen Option : 1

Q.18 निम्नलिखित में से कौन-सा चीनी तीर्थयात्री श्वेन त्सांग के लगभग 50 वर्ष बाद भारत आया था?

- Ans  1. फाहियान  
 2. त्सांग हाय  
 3. लाओ त्सू  
 4. आई-किंग

Question ID : 26433085223  
Status : Answered  
Chosen Option : 1

Q.19 पंजाब का कौन सा लोक नृत्य मुख्यतः महिलाओं द्वारा किया जाने वाला नृत्य है?

- Ans  1. गिद्धा  
 2. जवारा  
 3. दादरा  
 4. फुगडी

Question ID : 26433074074  
Status : Answered  
Chosen Option : 1

Q.20 निम्नलिखित चार में से तीन पारिस्थितिक पिरामिड हैं, और इस प्रकार एक समूह बनाते हैं। कौन सा इस समूह से संबंधित नहीं है?

- Ans  1. संस्कृति का पिरामिड  
 2. ऊर्जा का पिरामिड  
 3. बायोमास का पिरामिड  
 4. संख्या का पिरामिड

Question ID : 264330115247  
Status : Answered  
Chosen Option : 1

Section : Part-C-Elementary Mathematics

Q.1 एक अंकित मूल्य पर, 8% की छूट से उतना ही लाभ मिलता है जितना कि ₹25 की नकद छूट पर मिलता है। अंकित मूल्य (₹ में) क्या है?

- Ans  1. 317.50  
 2. 312.50  
 3. 315.00  
 4. 310.00

Question ID : 26433085452  
Status : Not Answered  
Chosen Option : --

Q.2 2 वर्षों में  $8\frac{1}{3}\%$  प्रति वर्ष चक्रवृद्धि ब्याज दर पर देय Rs.1,200 के ऋण का वार्षिक भुगतान कितना निकलेगा?

- Ans
- 1. Rs.1,065
  - 2. Rs.1,267
  - 3. Rs.829
  - 4. Rs.676

Question ID : 26433073031  
Status : Not Answered  
Chosen Option : --

Q.3 अक्षय और विपुल की वार्षिक आय क्रमशः 3 : 2 के अनुपात में है, जबकि उनके व्यय का अनुपात क्रमशः 7 : 3 है। यदि वर्ष के अंत में प्रत्येक ₹1,80,000 की बचत करता है, तो अक्षय की वार्षिक आय कितनी है?

- Ans
- 1. ₹4,60,000
  - 2. ₹4,32,000
  - 3. ₹3,24,000
  - 4. ₹3,20,000

Question ID : 26433076225  
Status : Not Answered  
Chosen Option : --

Q.4 निम्नलिखित में से सबसे बड़ा अनुपात कौन सा है?

$$\frac{5}{7}, \frac{3}{8}, \frac{9}{15}, \frac{4}{9}$$

- Ans
- 1.  $\frac{4}{9}$
  - 2.  $\frac{5}{7}$
  - 3.  $\frac{3}{8}$
  - 4.  $\frac{9}{15}$

Question ID : 26433075947  
Status : Answered  
Chosen Option : 2

Q.5 एक बेईमान दुकानदार एक ग्राहक को क्रय मूल्य के ऊपर T% के लाभ पर सामान बेचता है और साथ ही 1 kg के स्थान पर वह 800 g तौलता है। उसका कुल लाभ प्रतिशत 40% है। T का मान कितना है?

- Ans
- 1. 40
  - 2. 24
  - 3. 10
  - 4. 12

Question ID : 26433075759  
Status : Answered  
Chosen Option : 4

Q.6 यदि दो संख्याओं 456 और 240 का महत्तम समापवर्तक 24 है, तो दी गई संख्याओं का लघुतम समापवर्तक \_\_\_\_\_ है।

- Ans
- 1. 1200
  - 2. 2280
  - 3. 2400
  - 4. 4560

Question ID : 26433082349  
Status : Answered  
Chosen Option : 4

Q.7 शीतल अपनी दुकान पर सभी वस्तुओं पर 20% की छूट प्रदान करती है और फिर भी 12% का लाभ कमाती है। उस वस्तु का अंकित मूल्य क्या है जिसका क्रय मूल्य ₹200 है?

- Ans
- 1. ₹250
  - 2. ₹240
  - 3. ₹220
  - 4. ₹280

Question ID : 26433080107  
Status : Answered  
Chosen Option : 1

Q.8 एक भूखंड की कीमत 1500000 रुपए से बढ़कर 1800000 रुपए हो जाती है। भूखंड की कीमत में प्रतिशत वृद्धि है:

- Ans
- 1. 18 प्रतिशत
  - 2. 15 प्रतिशत
  - 3. 10 प्रतिशत
  - 4. 20 प्रतिशत

Question ID : 264330116821  
Status : Answered  
Chosen Option : 4

Q.9 अनुज, राम और संजय मिलकर एक कार्य को 78/5 दिनों में पूरा कर सकते हैं जबकि अनुज अकेले उसी कार्य को 39 दिनों में पूरा कर सकता है, तो राम और संजय मिलकर समान कार्य को लगभग कितने दिनों में कर सकते हैं?

- Ans
- 1. 41 दिन
  - 2. 44 दिन
  - 3. 45 दिन
  - 4. 26 दिन

Question ID : 264330116901  
Status : Answered  
Chosen Option : 4

Q.10 निम्नलिखित में से कौन-सा कथन गलत है?

- Ans
- 1. कम समय में एक निश्चित दूरी तय करने के लिए चाल बढ़ानी पड़ती है।
  - 2. समय की गणना दूरी को चाल से विभाजित करके की जाती है।
  - 3. चाल की गणना समय से दूरी को विभाजित करके की जाती है।
  - 4. दी गई समयावधि में अतिरिक्त दूरी तय करने के लिए दी गई चाल को कम कर दिया जाएगा।

Question ID : 26433082500  
Status : Answered  
Chosen Option : 4

Q.11 रीता 4 km/h की चाल से P से Q की ओर दौड़ना शुरू करती है। यदि P और Q के बीच की दूरी 6000 मीटर है, तो रीता द्वारा P और Q के बीच की दूरी को तय करने में कितना समय लगेगा?

- Ans
- 1. 2.0 h
  - 2. 1.0 h
  - 3. 1.5 h
  - 4. 2.5 h

Question ID : 26433075697  
Status : Answered  
Chosen Option : 4

Q.12 यदि एक घनाभ की लंबाई, चौड़ाई और ऊँचाई क्रमशः 16 cm, 15 cm और 12 cm है, तो घनाभ के सबसे लंबे विकर्ण की लंबाई \_\_\_\_\_ है।

- Ans
- 1. 18 cm
  - 2. 24 cm
  - 3. 20 cm
  - 4. 25 cm

Question ID : 26433090309  
Status : Answered  
Chosen Option : 2

Q.13 A lead hemisphere of radius 7 cm is cast into a cone of base diameter 14 cm. Find the height of the cone.

- Ans
- 1. 18 cm
  - 2. 14 cm
  - 3. 12 cm
  - 4. 16 cm

Question ID : 26433075751  
Status : Answered  
Chosen Option : 2

Q.14  $(24 \div 12 - 4 + 32) \div (4 + 8 \div 2 - 3)$  का मान \_\_\_\_\_ है।

- Ans
- 1. 1
  - 2. 7
  - 3. 5
  - 4. 11

Question ID : 26433075753  
Status : Not Answered  
Chosen Option : --

Q.15 A अकेले एक कार्य को 196 दिनों में पूरा कर सकता है, और B अकेले इसे 147 दिनों में पूरा कर सकता है। A तथा B दोनों एक साथ कार्य करते हुए कार्य को कितने दिनों में पूरा कर सकते हैं?

- Ans
- 1. 84
  - 2. 90
  - 3. 81
  - 4. 88

Question ID : 26433075297  
Status : Answered  
Chosen Option : 1

Q.16 एक पुरानी वस्तु का अंकित मूल्य ₹4,000 है। A इसे 15% और 10% के दो क्रमागत छूटों पर खरीदता है। वह इसकी मरम्मत पर ₹1,140 खर्च करता है और इसे ₹5,000 में बेच देता है। उसका लाभ या हानि प्रतिशत \_\_\_\_\_ है। (निकटतम पूर्णांक तक पूर्णांकित)

- Ans
- 1. 18%
  - 2. 17%
  - 3. 20%
  - 4. 19%

Question ID : 26433082383  
Status : Answered  
Chosen Option : 2

Q.17 एक ट्रक शहर A से शहर B तक 60 किमी/घंटा की औसत चाल से जाता है। यात्रा में 30 घंटे लगते हैं। यह शहर B से शहर A तक उसी सड़क पर 40 किमी/घंटा की औसत चाल से लौटता है। पूरी यात्रा के दौरान ट्रक की औसत चाल क्या थी?

- Ans
- 1. 52 किमी/घंटा
  - 2. 48 किमी/घंटा
  - 3. 46 किमी/घंटा
  - 4. 50 किमी/घंटा

Question ID : 26433080355  
Status : Not Answered  
Chosen Option : --

Q.18 1000 m की एक रेखीय दौड़ में A, B को 50 m या 5 सेकंड से हरा देता है। निर्धारित कीजिए कि A को दौड़ पूरी करने में कितना समय लगता है।

- Ans
- 1. 120 सेकंड
  - 2. 60 सेकंड
  - 3. 100 सेकंड
  - 4. 95 सेकंड

Question ID : 26433075162  
Status : Answered  
Chosen Option : 3

Q.19 यदि संगीता के मासिक वेतन में  $3\frac{2}{3}\%$  की वृद्धि की जाती है, तो उसे Rs.132 अधिक मिलते हैं। संगीता का मासिक वेतन क्या है?

- Ans
- 1. Rs.2,400
  - 2. Rs.3,000
  - 3. Rs.3,200
  - 4. Rs.3,600

Question ID : 26433080290  
Status : Not Answered  
Chosen Option : --

Q.20 Rs.1,225 की राशि पर दो वर्षों का ब्याज Rs.144 है जब ब्याज एक निश्चित ब्याज दर पर वार्षिक रूप से चक्रवृद्धि होता है। वार्षिक ब्याज दर ज्ञात करें।

- Ans
- 1.  $5\frac{4}{7}\%$
  - 2.  $5\frac{2}{7}\%$
  - 3.  $6\frac{2}{7}\%$
  - 4.  $5\frac{5}{7}\%$

Question ID : 26433073130  
Status : Not Answered  
Chosen Option : --

Section : Part-D-English

Q.1 Select the most appropriate meaning of the given idiom.

Have your heart in your mouth

- Ans
- 1. Accusing someone of faults which you have
  - 2. Doing immediately
  - 3. Feeling extremely nervous
  - 4. Not being of your kind

Question ID : 26433073707  
Status : Answered  
Chosen Option : 4

Q.2 Select the most appropriate synonym of the given word.

Leap

- Ans
- 1. Peek
  - 2. Pile
  - 3. Run
  - 4. Hop

Question ID : 26433084891  
Status : Answered  
Chosen Option : 2

Q.3 Select the most appropriate ANTONYM of the given word.

Follow

- Ans
- 1. Heed
  - 2. Trail
  - 3. Show
  - 4. Lead

Question ID : 26433086376  
Status : Answered  
Chosen Option : 1

Q.4 Select the correct pair of homonyms to fill in the blanks.

The sales of \_\_\_\_\_, \_\_\_\_\_ by 20% on Valentine's Day.

- Ans
- 1. dates, dated
  - 2. roll, rolled
  - 3. pear, pair
  - 4. roses, rose

Question ID : 26433061048  
Status : Answered  
Chosen Option : 4

Q.5 Select the most appropriate option that can substitute the underlined segment in the given sentence.

Their plan to action during that critical situation was well appreciated by all.

- Ans
- 1. in action during that
  - 2. of action during that
  - 3. off action about that
  - 4. of action off that

Question ID : 26433089308  
Status : Not Answered  
Chosen Option : --

Q.6 Select the most appropriate option that can substitute the underlined segment in the given sentence.

To enable women to become literate and provide for themselves, education for girls must be done voluntary.

- Ans
- 1. kept secret
  - 2. made mandatory
  - 3. enabled extensively
  - 4. done compulsorily

Question ID : 26433089801  
Status : Answered  
Chosen Option : 2

Q.7 The following sentence has been split into four segments. Identify the segment that contains a grammatical error.

I were / writing / this poem / last evening.

- Ans
- 1. this poem
  - 2. last evening
  - 3. I were
  - 4. writing

Question ID : 26433094742  
Status : Answered  
Chosen Option : 3



**Q.8** Select the most appropriate synonym of the underlined word in the given sentence.

The news channel described the event in graphic detail.

- Ans**  1. Vivid  
 2. Startling  
 3. Mirthful  
 4. Comic

Question ID : 26433087917  
Status : Not Answered  
Chosen Option : --

**Q.9** Select the most appropriate option to substitute the underlined segment in the given sentence.

The syllabus designers has tried to address the problem of time available for teaching.

- Ans**  1. have tried to address  
 2. has tried addressing  
 3. having tried to address  
 4. has been tried to address

Question ID : 264330100290  
Status : Answered  
Chosen Option : 4

**Q.10** Select the most appropriate ANTONYM of the given word.

Rustic

- Ans**  1. Natural  
 2. Shallow  
 3. Urbane  
 4. Depressed

Question ID : 26433087921  
Status : Not Answered  
Chosen Option : --

**Q.11** Identify and correct the INCORRECTLY spelt word in the given sentence.

Sometimes failure is the stepping stone to success.

- Ans**  1. succes  
 2. stepping  
 3. failuire  
 4. stown

Question ID : 26433072763  
Status : Not Answered  
Chosen Option : --

**Q.12** Select the most appropriate synonym of the word given below to fill in the blank in the following sentence.

The car \_\_\_\_\_ into the truck.

- Ans**
- 1. decked
  - 2. bashed
  - 3. striped
  - 4. bounded

Question ID : 26433084776  
Status : Not Answered  
Chosen Option : --

**Q.13** Select the correct spelling of the underlined word in the following sentence.

The architectre of the building is worth seeing.

- Ans**
- 1. arckitecture
  - 2. architecher
  - 3. architectuer
  - 4. architecture

Question ID : 26433072372  
Status : Answered  
Chosen Option : 4

**Q.14** Select the most appropriate meaning of the given idiom.

Head over heels

- Ans**
- 1. To have dispute
  - 2. To be very angry
  - 3. To be madly in love
  - 4. To have immense patience

Question ID : 26433073716  
Status : Answered  
Chosen Option : 3

**Q.15** Select the most appropriate option to fill in the blank.

The teacher \_\_\_\_\_ with laughter, pleased with his joke, but then composed himself.

- Ans**
- 1. bread
  - 2. blade
  - 3. braid
  - 4. brayed

Question ID : 26433090394  
Status : Answered  
Chosen Option : 2

**Comprehension:**

In the following passage, some words have been deleted. Read the passage carefully and select the most appropriate option to fill in each blank.

We (1)\_\_\_\_\_ brought up to fear insects. We regard them as unnecessary creatures that do more harm than good. Man continually (2)\_\_\_\_\_ war on them, because they contaminate his food, carry diseases, or devour his crops. They sting or bite without provocation; they fly uninvited into our rooms on summer nights or beat against our lighted windows. We live in dread not only of unpleasant insects like spiders or wasps but of quite (3)\_\_\_\_\_ ones like moths. Reading about them increases our understanding without dispelling our fears. Knowing that the industrious ant lives in a highly organised society does nothing to prevent us from being filled with revulsion when we find hordes of them crawling over a carefully prepared picnic lunch.

No matter how much we like honey or how much we have read about the uncanny sense of direction which bees possess, we have a horror of being stung. (4)\_\_\_\_\_ of our fears are unreasonable but they are difficult to erase. At the same time, however, insects are strangely fascinating. We enjoy reading about them, especially when we find that, like the praying mantis, they lead perfectly horrible lives. We enjoy staring at them, entranced as they go (5)\_\_\_\_\_ their business, unaware (we hope) of our presence.

**SubQuestion No : 16**

**Q.16 Select the most appropriate option to fill in blank 1.**

- Ans**
- 1. have been
  - 2. will be being
  - 3. were being
  - 4. are been

Question ID : 26433090442  
Status : Answered  
Chosen Option : 1

**Comprehension:**

In the following passage, some words have been deleted. Read the passage carefully and select the most appropriate option to fill in each blank.

We (1)\_\_\_\_\_ brought up to fear insects. We regard them as unnecessary creatures that do more harm than good. Man continually (2)\_\_\_\_\_ war on them, because they contaminate his food, carry diseases, or devour his crops. They sting or bite without provocation; they fly uninvited into our rooms on summer nights or beat against our lighted windows. We live in dread not only of unpleasant insects like spiders or wasps but of quite (3)\_\_\_\_\_ ones like moths. Reading about them increases our understanding without dispelling our fears. Knowing that the industrious ant lives in a highly organised society does nothing to prevent us from being filled with revulsion when we find hordes of them crawling over a carefully prepared picnic lunch.

No matter how much we like honey or how much we have read about the uncanny sense of direction which bees possess, we have a horror of being stung. (4)\_\_\_\_\_ of our fears are unreasonable but they are difficult to erase. At the same time, however, insects are strangely fascinating. We enjoy reading about them, especially when we find that, like the praying mantis, they lead perfectly horrible lives. We enjoy staring at them, entranced as they go (5)\_\_\_\_\_ their business, unaware (we hope) of our presence.

**SubQuestion No : 17**

**Q.17 Select the most appropriate option to fill in blank 2.**

- Ans**
- 1. wages
  - 2. employs
  - 3. redresses
  - 4. yields

Question ID : 26433090443  
Status : Answered  
Chosen Option : 1

**Comprehension:**

In the following passage, some words have been deleted. Read the passage carefully and select the most appropriate option to fill in each blank.

We (1)\_\_\_\_\_ brought up to fear insects. We regard them as unnecessary creatures that do more harm than good. Man continually (2)\_\_\_\_\_ war on them, because they contaminate his food, carry diseases, or devour his crops. They sting or bite without provocation; they fly uninvited into our rooms on summer nights or beat against our lighted windows. We live in dread not only of unpleasant insects like spiders or wasps but of quite (3)\_\_\_\_\_ ones like moths. Reading about them increases our understanding without dispelling our fears. Knowing that the industrious ant lives in a highly organised society does nothing to prevent us from being filled with revulsion when we find hordes of them crawling over a carefully prepared picnic lunch.

No matter how much we like honey or how much we have read about the uncanny sense of direction which bees possess, we have a horror of being stung. (4)\_\_\_\_\_ of our fears are unreasonable but they are difficult to erase. At the same time, however, insects are strangely fascinating. We enjoy reading about them, especially when we find that, like the praying mantis, they lead perfectly horrible lives. We enjoy staring at them, entranced as they go (5)\_\_\_\_\_ their business, unaware (we hope) of our presence.

**SubQuestion No : 18**

**Q.18 Select the most appropriate option to fill in blank 3.**

- Ans**  1. benignant  
 2. harmless  
 3. nonfatal  
 4. wholesome

Question ID : 26433090444  
Status : Answered  
Chosen Option : 3

**Comprehension:**

In the following passage, some words have been deleted. Read the passage carefully and select the most appropriate option to fill in each blank.

We (1)\_\_\_\_\_ brought up to fear insects. We regard them as unnecessary creatures that do more harm than good. Man continually (2)\_\_\_\_\_ war on them, because they contaminate his food, carry diseases, or devour his crops. They sting or bite without provocation; they fly uninvited into our rooms on summer nights or beat against our lighted windows. We live in dread not only of unpleasant insects like spiders or wasps but of quite (3)\_\_\_\_\_ ones like moths. Reading about them increases our understanding without dispelling our fears. Knowing that the industrious ant lives in a highly organised society does nothing to prevent us from being filled with revulsion when we find hordes of them crawling over a carefully prepared picnic lunch.

No matter how much we like honey or how much we have read about the uncanny sense of direction which bees possess, we have a horror of being stung. (4)\_\_\_\_\_ of our fears are unreasonable but they are difficult to erase. At the same time, however, insects are strangely fascinating. We enjoy reading about them, especially when we find that, like the praying mantis, they lead perfectly horrible lives. We enjoy staring at them, entranced as they go (5)\_\_\_\_\_ their business, unaware (we hope) of our presence.

**SubQuestion No : 19**

**Q.19 Select the most appropriate option to fill in blank 4.**

- Ans**  1. Most  
 2. Some  
 3. Several  
 4. Few

Question ID : 26433090445  
Status : Answered  
Chosen Option : 1

**Comprehension:**

In the following passage, some words have been deleted. Read the passage carefully and select the most appropriate option to fill in each blank.

We (1)\_\_\_\_\_ brought up to fear insects. We regard them as unnecessary creatures that do more harm than good. Man continually (2)\_\_\_\_\_ war on them, because they contaminate his food, carry diseases, or devour his crops. They sting or bite without provocation; they fly uninvited into our rooms on summer nights or beat against our lighted windows. We live in dread not only of unpleasant insects like spiders or wasps but of quite (3)\_\_\_\_\_ ones like moths. Reading about them increases our understanding without dispelling our fears. Knowing that the industrious ant lives in a highly organised society does nothing to prevent us from being filled with revulsion when we find hordes of them crawling over a carefully prepared picnic lunch.

No matter how much we like honey or how much we have read about the uncanny sense of direction which bees possess, we have a horror of being stung. (4)\_\_\_\_\_ of our fears are unreasonable but they are difficult to erase. At the same time, however, insects are strangely fascinating. We enjoy reading about them, especially when we find that, like the praying mantis, they lead perfectly horrible lives. We enjoy staring at them, entranced as they go (5)\_\_\_\_\_ their business, unaware (we hope) of our presence.

**SubQuestion No : 20**

**Q.20** Select the most appropriate option to fill in blank 5.

- Ans**
- 1. around
  - 2. beside
  - 3. about
  - 4. near

Question ID : 26433090446  
Status : Answered  
Chosen Option : 1

**Section : Part-D-Hindi**

**Q.1** निम्नलिखित में से शुद्ध वाक्य कौन सा है?

- Ans**
- 1. वह लड़का खटनत है।
  - 2. वह लड़का नटखट है।
  - 3. वह लड़का नटनट है।
  - 4. वह लड़का नटखत है।

Question ID : 26433066831  
Status : Not Answered  
Chosen Option : --

**Q.2** मनुष्य को जीवों का रक्षक बनना चाहिए।  
उपरोक्त वाक्य में रेखांकित शब्द के सही विलोम शब्द का चयन कीजिए।

- Ans**
- 1. भक्षक
  - 2. वधिक
  - 3. तक्षक
  - 4. मारक

Question ID : 26433079744  
Status : Not Answered  
Chosen Option : --

Q.3 निम्नलिखित वाक्य के किस शब्द में अशुद्धि है?  
चावल का अभाव चिंतनिय है।

- Ans
- 1. अभाव
  - 2. चावल
  - 3. है
  - 4. चिंतनिय

Question ID : 26433066770  
Status : Not Answered  
Chosen Option : --

Q.4 निम्नलिखित मुहावरे के उचित अर्थ का चयन विकल्पों में से कीजिए।  
ईट का जवाब पत्थर से देना

- Ans
- 1. गुप्त रहस्य प्रकट कर देना
  - 2. विचलित होना
  - 3. युद्धात्मक विनाश लाना
  - 4. किसी की दुष्टता का करारा जवाब देना

Question ID : 26433070000  
Status : Not Answered  
Chosen Option : --

Q.5 इनमें से कौन-सा शब्द 'गंगा' का पर्यायवाची नहीं है?

- Ans
- 1. विष्णुपदी
  - 2. त्रिपथगा
  - 3. कालिंदी
  - 4. देवनदी

Question ID : 26433066896  
Status : Not Answered  
Chosen Option : --

Q.6 'जो बहुत कम जानता हो' वाक्यांश के लिए सही शब्द क्या होगा?

- Ans
- 1. अल्पज्ञ
  - 2. जिज्ञासु
  - 3. कृतज्ञ
  - 4. सर्वज्ञ

Question ID : 26433069982  
Status : Not Answered  
Chosen Option : --

Q.7 निम्नलिखित विकल्पों में से किस एक वाक्य में 'मोद' शब्द के लिए उचित पर्यायवाची का प्रयोग हुआ है?

- Ans
- 1. नौकरी मिलने पर वह हर्षित है।
  - 2. नरेश दुखी है।
  - 3. वह पढ़ता है।
  - 4. उमेश को उम्मीद है।

Question ID : 26433091189  
Status : Not Answered  
Chosen Option : --

Q.8 दिए गये वाक्यांश के लिए उचित शब्द बताइए –'किसी बात पर बार-बार जोर देना'

- Ans
- 1. हठधर्मिता
  - 2. हठ
  - 3. बारम्बारता
  - 4. आग्रह

Question ID : 26433062587  
Status : Not Answered  
Chosen Option : --

Q.9 'चक्षुश्रवा' के लिए उपयुक्त वाक्य खंड चुनकर लिखिए।

- Ans
- 1. चक्षु से जो श्रवण कार्य करता है।
  - 2. चक्षु को जो दूसरों के साथ मिलाता है।
  - 3. चक्षु से जो देखने का कार्य करता है।
  - 4. चक्षु को जो बंदकर सोचता है।

Question ID : 26433063062  
Status : Not Answered  
Chosen Option : --

Q.10 निम्नलिखित मुहावरे का सही अर्थ विकल्पों में से चुनिए।  
खरा खेल फरुखाबादी

- Ans
- 1. गुप्त सलाह करना
  - 2. युद्ध में मारा जाना
  - 3. सही काम
  - 4. परेशान होना

Question ID : 26433070012  
Status : Not Answered  
Chosen Option : --

Q.11 निम्न में से कौन सा शब्द संख्यावाचक विशेषण का उदाहरण नहीं है?

- Ans
- 1. दोगुना
  - 2. लगातार
  - 3. पहला
  - 4. बहुत

Question ID : 26433085052  
Status : Not Answered  
Chosen Option : --

Q.12 निम्नलिखित विकल्पों में से किस एक वाक्य में 'आरम्भ' शब्द के लिए उचित विलोम का प्रयोग हुआ है?

- Ans
- 1. हर व्यक्ति का अंत सुनिश्चित है।
  - 2. समय की कद्र करना चाहिए।
  - 3. देश को श्रमजीवी लोगों की जरूरत है।
  - 4. शिमला भारत में है।

Question ID : 26433091191  
Status : Not Answered  
Chosen Option : --

Q.13 इस कक्ष की लंबाई, ऊँचाई और चौड़ाई बराबर और एकरूप है।  
उपरोक्त वाक्य में कौन-सा शब्द भाववाचक संज्ञा शब्द नहीं है?

- Ans
- 1. लंबाई
  - 2. चौड़ाई
  - 3. ऊँचाई
  - 4. एकरूप

Question ID : 26433062854  
Status : Not Answered  
Chosen Option : --

Q.14 निम्नलिखित वाक्य में रेखांकित खंड के स्थान पर प्रयुक्त होने वाले सबसे उपयुक्त विकल्प का चयन कीजिए।  
वह सकुशल गाँव पहुँचे गया।

- Ans
- 1. पहुँच
  - 2. पहुँचाना
  - 3. पहुँची
  - 4. पहचान

Question ID : 26433079668  
Status : Not Answered  
Chosen Option : --

Q.15 निम्नलिखित वाक्यांश के लिए उपयुक्त सार्थक शब्द क्या होगा?  
किसी व्यवस्था को देखने वाला

- Ans
- 1. व्यवस्थापक
  - 2. व्यापक
  - 3. व्यामक
  - 4. व्यावहारिक

Question ID : 26433073315  
Status : Not Answered  
Chosen Option : --

#### Comprehension:

पत्र संख्या 1-5 के उत्तर निम्न गद्यांश के आधार पर दीजिए।

भारत ने 1. \_\_\_\_\_ प्राप्त करने के बाद अनेक क्षेत्रों में महत्वपूर्ण उपलब्धियाँ प्राप्त की हैं। जब हम स्वतंत्र हुए तो उस समय हमारी स्थिति अच्छी न थी। सरकारी प्रयासों से काफी सुधार हुआ परंतु अभी भी एक 2. \_\_\_\_\_

ऐसा है जिसमें हम अभी तक कुछ विशेष नहीं कर पाए हैं, वह क्षेत्र है - खेलों का। इससे बड़ी विडंबना और क्या हो सकती है कि वर्षों से हम ओलंपिक में कोई भी स्वर्णपदक नहीं जीत पाए। दुनिया के छोटे-छोटे अविकसित, निर्धन राष्ट्रों के प्रतिभागी भी 3. \_\_\_\_\_ के क्षेत्र में हमसे आगे निकल गए हैं। कभी हॉकी का विशेष चैंपियन रहने वाला भारत आज इस खेल में अपनी प्रतिष्ठा खो चुका है। खेलों के गिरते स्तर के लिए कौन जिम्मेदार है? एक ओर सरकार की उदासीन दोषपूर्ण सरकारी नीतियाँ हैं तो दूसरी ओर विभिन्न खेल संघों की 4. \_\_\_\_\_, खिलाड़ियों के लिए सुविधाओं एवं प्रशिक्षण का सर्वथा अभाव या कुछ और प्रतियोगिताओं में भाग लेकर खाली हाथ लौटने पर सभी एक दूसरे को दोषी बताते हैं। कारण चाहे जो भी हो इतना तय है कि खेलकूद को राष्ट्रीय 5. \_\_\_\_\_ का पर्याय नहीं मानते। अभाव प्रतियोगिताओं का नहीं, अभाव है तो लगन का, प्रोत्साहन का, संकल्प का और मुंहतोड़ जवाब देने वाले जीवट का।

#### SubQuestion No : 16

Q.16 रिक्त स्थान 1 पर आने वाला सर्वाधिक उपयुक्त शब्द इनमें से क्या होगा?

- Ans
- 1. खुशी
  - 2. स्वाधीनता
  - 3. गुलामी
  - 4. पराधीनता

Question ID : 26433072606  
Status : Not Answered  
Chosen Option : --



**Comprehension:**

प्रश्न संख्या 1-5 के उत्तर निम्न गद्यांश के आधार पर दीजिए।

भारत ने 1. \_\_\_\_\_ प्राप्त करने के बाद अनेक क्षेत्रों में महत्वपूर्ण उपलब्धियाँ प्राप्त की हैं। जब हम स्वतंत्र हुए तो उस समय हमारी स्थिति अच्छी न थी। सरकारी प्रयासों से काफी सुधार हुआ परंतु अभी भी एक 2. \_\_\_\_\_

\_\_\_\_\_ ऐसा है जिसमें हम अभी तक कुछ विशेष नहीं कर पाए हैं, वह क्षेत्र है - खेलों का। इससे बड़ी विडंबना और क्या हो सकती है कि वर्षों से हम ओलंपिक में कोई भी स्वर्णपदक नहीं जीत पाए। दुनिया के छोटे-छोटे अ विकसित, निर्धन राष्ट्रों के प्रतिभागी भी 3. \_\_\_\_\_ के क्षेत्र में हमसे आगे निकल गए हैं। कभी हॉकी का विशेष चैंपियन रहने वाला भारत आज इस खेल में अपनी प्रतिष्ठा खो चुका है। खेलों के गिरते स्तर के लिए कौन जिम्मेदार है? एक ओर सरकार की उदासीन दोषपूर्ण सरकारी नीतियाँ हैं तो दूसरी ओर विभिन्न खेल संघों की 4. \_\_\_\_\_, खिलाड़ियों के लिए सुविधाओं एवं प्रशिक्षण का सर्वथा अभाव या कुछ और प्रतियोगिताओं में भाग लेकर खाली हाथ लौटने पर सभी एक दूसरे को दोषी बताते हैं। कारण चाहे जो भी हो इतना तय है कि खेलकूद को राष्ट्रीय 5. \_\_\_\_\_ का पर्याय नहीं मानते। अभाव प्रतियोगिताओं का नहीं, अभाव है तो लगन का, प्रोत्साहन का, संकल्प का और मुंहतोड़ जवाब देने वाले जीवट का।

**SubQuestion No : 17**

Q.17 रिक्त स्थान 2 पर आने वाला सर्वाधिक उपयुक्त शब्द इनमें से क्या होगा?

- Ans  1. शहर  
 2. क्षेत्र  
 3. मामला  
 4. खेत

Question ID : 26433072607  
Status : Not Answered  
Chosen Option : --

**Comprehension:**

प्रश्न संख्या 1-5 के उत्तर निम्न गद्यांश के आधार पर दीजिए।

भारत ने 1. \_\_\_\_\_ प्राप्त करने के बाद अनेक क्षेत्रों में महत्वपूर्ण उपलब्धियाँ प्राप्त की हैं। जब हम स्वतंत्र हुए तो उस समय हमारी स्थिति अच्छी न थी। सरकारी प्रयासों से काफी सुधार हुआ परंतु अभी भी एक 2. \_\_\_\_\_

\_\_\_\_\_ ऐसा है जिसमें हम अभी तक कुछ विशेष नहीं कर पाए हैं, वह क्षेत्र है - खेलों का। इससे बड़ी विडंबना और क्या हो सकती है कि वर्षों से हम ओलंपिक में कोई भी स्वर्णपदक नहीं जीत पाए। दुनिया के छोटे-छोटे अ विकसित, निर्धन राष्ट्रों के प्रतिभागी भी 3. \_\_\_\_\_ के क्षेत्र में हमसे आगे निकल गए हैं। कभी हॉकी का विशेष चैंपियन रहने वाला भारत आज इस खेल में अपनी प्रतिष्ठा खो चुका है। खेलों के गिरते स्तर के लिए कौन जिम्मेदार है? एक ओर सरकार की उदासीन दोषपूर्ण सरकारी नीतियाँ हैं तो दूसरी ओर विभिन्न खेल संघों की 4. \_\_\_\_\_, खिलाड़ियों के लिए सुविधाओं एवं प्रशिक्षण का सर्वथा अभाव या कुछ और प्रतियोगिताओं में भाग लेकर खाली हाथ लौटने पर सभी एक दूसरे को दोषी बताते हैं। कारण चाहे जो भी हो इतना तय है कि खेलकूद को राष्ट्रीय 5. \_\_\_\_\_ का पर्याय नहीं मानते। अभाव प्रतियोगिताओं का नहीं, अभाव है तो लगन का, प्रोत्साहन का, संकल्प का और मुंहतोड़ जवाब देने वाले जीवट का।

**SubQuestion No : 18**

Q.18 रिक्त स्थान 3 पर आने वाला सर्वाधिक उपयुक्त शब्द इनमें से क्या होगा?

- Ans  1. संगीत  
 2. अभिनय  
 3. खेलकूद  
 4. नृत्य

Question ID : 26433072608  
Status : Not Answered  
Chosen Option : --

**Comprehension:**

प्रश्न संख्या 1-5 के उत्तर निम्न गद्यांश के आधार पर दीजिए।

भारत ने 1. \_\_\_\_\_ प्राप्त करने के बाद अनेक क्षेत्रों में महत्वपूर्ण उपलब्धियाँ प्राप्त की हैं। जब हम स्वतंत्र हुए तो उस समय हमारी स्थिति अच्छी न थी। सरकारी प्रयासों से काफी सुधार हुआ परंतु अभी भी एक 2. \_\_\_\_\_

\_\_\_\_\_ ऐसा है जिसमें हम अभी तक कुछ विशेष नहीं कर पाए हैं, वह क्षेत्र है - खेलों का। इससे बड़ी विडंबना और क्या हो सकती है कि वर्षों से हम ओलंपिक में कोई भी स्वर्णपदक नहीं जीत पाए। दुनिया के छोटे-छोटे अविकसित, निर्धन राष्ट्रों के प्रतिभागी भी 3. \_\_\_\_\_ के क्षेत्र में हमसे आगे निकल गए हैं। कभी हॉकी का विशेष चैंपियन रहने वाला भारत आज इस खेल में अपनी प्रतिष्ठा खो चुका है। खेलों के गिरते स्तर के लिए कौन जिम्मेदार है? एक ओर सरकार की उदासीन दोषपूर्ण सरकारी नीतियाँ हैं तो दूसरी ओर विभिन्न खेल संघों की 4. \_\_\_\_\_, खिलाड़ियों के लिए सुविधाओं एवं प्रशिक्षण का सर्वथा अभाव या कुछ और प्रतियोगिताओं में भाग लेकर खाली हाथ लौटने पर सभी एक दूसरे को दोषी बताते हैं। कारण चाहे जो भी हो इतना तय है कि खेलकूद को राष्ट्रीय 5. \_\_\_\_\_ का पर्याय नहीं मानते। अभाव प्रतियोगिताओं का नहीं, अभाव है तो लगन का, प्रोत्साहन का, संकल्प का और मुंहतोड़ जवाब देने वाले जीवट का।

**SubQuestion No : 19**

Q.19 रिक्त स्थान 4 पर आने वाला सर्वाधिक उपयुक्त शब्द इनमें से क्या होगा?

- Ans  1. गुटबाजी  
 2. मित्रता  
 3. दोस्ती  
 4. दुश्मनी

Question ID : 26433072609

Status : Not Answered

Chosen Option : --

**Comprehension:**

प्रश्न संख्या 1-5 के उत्तर निम्न गद्यांश के आधार पर दीजिए।

भारत ने 1. \_\_\_\_\_ प्राप्त करने के बाद अनेक क्षेत्रों में महत्वपूर्ण उपलब्धियाँ प्राप्त की हैं। जब हम स्वतंत्र हुए तो उस समय हमारी स्थिति अच्छी न थी। सरकारी प्रयासों से काफी सुधार हुआ परंतु अभी भी एक 2. \_\_\_\_\_

\_\_\_\_\_ ऐसा है जिसमें हम अभी तक कुछ विशेष नहीं कर पाए हैं, वह क्षेत्र है - खेलों का। इससे बड़ी विडंबना और क्या हो सकती है कि वर्षों से हम ओलंपिक में कोई भी स्वर्णपदक नहीं जीत पाए। दुनिया के छोटे-छोटे अविकसित, निर्धन राष्ट्रों के प्रतिभागी भी 3. \_\_\_\_\_ के क्षेत्र में हमसे आगे निकल गए हैं। कभी हॉकी का विशेष चैंपियन रहने वाला भारत आज इस खेल में अपनी प्रतिष्ठा खो चुका है। खेलों के गिरते स्तर के लिए कौन जिम्मेदार है? एक ओर सरकार की उदासीन दोषपूर्ण सरकारी नीतियाँ हैं तो दूसरी ओर विभिन्न खेल संघों की 4. \_\_\_\_\_, खिलाड़ियों के लिए सुविधाओं एवं प्रशिक्षण का सर्वथा अभाव या कुछ और प्रतियोगिताओं में भाग लेकर खाली हाथ लौटने पर सभी एक दूसरे को दोषी बताते हैं। कारण चाहे जो भी हो इतना तय है कि खेलकूद को राष्ट्रीय 5. \_\_\_\_\_ का पर्याय नहीं मानते। अभाव प्रतियोगिताओं का नहीं, अभाव है तो लगन का, प्रोत्साहन का, संकल्प का और मुंहतोड़ जवाब देने वाले जीवट का।

**SubQuestion No : 20**

Q.20 रिक्त स्थान 5 पर आने वाला सर्वाधिक उपयुक्त शब्द इनमें से क्या होगा?

- Ans  1. खुशी  
 2. दुख  
 3. सम्मान  
 4. अपमान

Question ID : 26433072610

Status : Not Answered

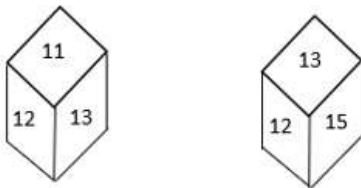
Chosen Option : --

# Constable GD in CAPFs SSF Rifleman GD in Assam Rifles and Sepoy in NCB Examination 2022

Roll Number	<b>KD Job Updates</b>
Candidate Name	<b>KD Job Updates</b>
Venue Name	iON Digital Zone iDZ 1 Patliputra
Exam Date	09/02/2023
Exam Time	9:00 AM - 10:00 AM
Subject	Constable GD Examination 2022

Section : Part-A-General Intelligence and Reasoning

Q.1 Two different positions of the same dice are shown. Find the number on the face opposite the face showing '11'.



- Ans
- 1. 12
  - 2. 14
  - 3. 16
  - 4. 15

Question ID : 26433089506

Status : Answered

Chosen Option : 4

Q.2 K, L, M, N, O and P are six friends sitting around a circular table facing opposite to the centre. M is sitting to the immediate left of O and immediate right of K. K is sitting to the immediate right of N. L is sitting to the immediate left of N. P is sitting between L and O. Who is sitting to the immediate right of P?

- Ans
- 1. L
  - 2. O
  - 3. P
  - 4. M

Question ID : 26433074610

Status : Answered

Chosen Option : 1

Q.3 'A + B' means 'A is the sister of B'.  
'A - B' means 'A is the husband of B'.  
'A × B' means 'A is the father of B'.  
'A ÷ B' means 'A is the daughter of B'.  
If  $R + T \div P - M$ , then how is P related to R?

- Ans
- 1. Daughter
  - 2. Father
  - 3. Mother
  - 4. Son

Question ID : 26433069174  
Status : Answered  
Chosen Option : 1

Q.4 Select the correct mirror image of the given figure when the mirror is placed at MN as shown below.

eDuCaTionAL



- Ans
- 1. eDucATionAL
  - 2. eDucATionAL
  - 3. eDucATionAL
  - 4. eDucATionAL

Question ID : 26433085552  
Status : Answered  
Chosen Option : 1

Q.5 Select the option that is related to the fifth number in the same way as the second number is related to the first number and the fourth number is related to the third number.

441 : 7 :: 225 : 5 :: 729 : ?

- Ans
- 1. 9
  - 2. 3
  - 3. 6
  - 4. 12

Question ID : 26433069408  
Status : Answered  
Chosen Option : 1

**Q.6** Seven people, M, N, O, P, Q, R and S are sitting in a straight row, facing north. P is sitting third to the right of M. Only four people sit between Q and S. O is sitting third to the right of Q. R is sitting to the immediate left of Q. Who is sitting at the centre of the row?

- Ans
- 1. Q
  - 2. N
  - 3. M
  - 4. O

Question ID : 26433068281  
Status : Answered  
Chosen Option : 2

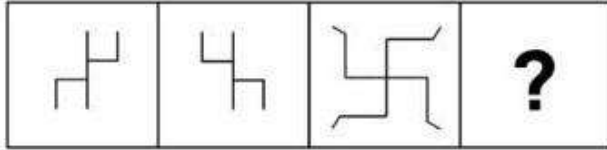
**Q.7** Which of the following numbers will replace the question mark (?) in the given series?  
216, 343, ?, 729, 1000

- Ans
- 1. 512
  - 2. 470
  - 3. 525
  - 4. 624

Question ID : 26433068093  
Status : Answered  
Chosen Option : 1

KD Job Updates

**Q.8** Find the options which is related to the third figure in the same manner as second figure is related with the first figure.  
(First figure is the leftmost figure.)



Ans

- 1.
- 2.
- 3.
- 4.

Question ID : 26433078859  
Status : Answered  
Chosen Option : 2

**Q.9** In a certain code language, 'HOUSE' is written as 'JUWYG' and 'BEARD' is written as 'DKCXF'. How will 'CRAVE' be written in the same code language?

- Ans
- 1. EXCBG
  - 2. ANDAG
  - 3. DMCEG
  - 4. FLBEG

Question ID : 26433079488  
Status : Answered  
Chosen Option : 1

**Q.10** Which letter-cluster will replace the question mark (?) to complete the given series?  
CEGi, JLNP, QSUW, XZBD, ?

- Ans
- 1. EGIK
  - 2. EGKI
  - 3. EDHI
  - 4. EHIK

Question ID : 26433067720  
Status : Answered  
Chosen Option : 1

Q.11 Which option represents the correct order of the given words as they would appear in the English dictionary?

- 1 finish
- 2 fight
- 3 figure
- 4 fire
- 5 finger

- Ans
- 1. 2,4,5,3,1
  - 2. 4,3,2,5,1
  - 3. 3,2,4,5,1
  - 4. 2,3,5,1,4

Question ID : 26433069292

Status : Answered

Chosen Option : 4

Q.12 In a code language, 'make time' is coded as 'bo ho', 'time never stops' is coded as 'ho ru du', 'she stops work' is coded as 'vu du ya', and 'never make mistakes' is coded as 'ru bo tu'. What is the code for the word 'never'?

- Ans
- 1. ho
  - 2. ya
  - 3. bo
  - 4. ru

Question ID : 26433069468

Status : Answered

Chosen Option : 4

Q.13 Read the given statements and conclusions carefully. Assuming that the information given in the statements is true, even if it appears to be at variance with commonly known facts, decide which of the given conclusions logically follow(s) from the statements.

Statements:

- All cats are dogs.
- Some dogs are elephants
- All elephants are camels.

Conclusions:

- I. All cats are elephants.
- II. Some cats are elephants.
- III. Some elephants are dogs
- IV. Some camels are dogs.

- Ans
- 1. None of the conclusions follow
  - 2. Conclusion III and IV follow
  - 3. Only conclusion II follows
  - 4. Only conclusion I follows

Question ID : 26433082663

Status : Answered

Chosen Option : 2

Q.14 Which two numbers(not digits), from the given options, should be interchanged to make the given equation correct?  
 $(60 \div 2) \times 3 - 100 + 400 = 560$

- Ans  1. 400 and 60  
 2. 60 and 100  
 3. 400 and 560  
 4. 100 and 560

Question ID : 26433082482  
Status : Answered  
Chosen Option : 1

Q.15 Which of the following numbers will replace the question mark (?) in the given series?  
5, 11, 21, ?, 85, 171

- Ans  1. 43  
 2. 36  
 3. 59  
 4. 55

Question ID : 26433076741  
Status : Answered  
Chosen Option : 1

Q.16 Which of the following terms will replace the question mark (?) in the given series?  
UWAR, OUEP, ISIN, EQOL, ?

- Ans  1. AOUJ  
 2. AOVK  
 3. BOUK  
 4. BOVJ

Question ID : 26433068311  
Status : Answered  
Chosen Option : 1

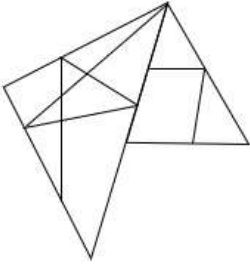
Q.17 Select the option that is related to the fifth letter-cluster in the same way as the second letter-cluster is related to the first letter-cluster and the fourth letter-cluster is related to the third letter-cluster.  
CERAMIC : ACPYKGA:: GLASSES : EJYQQCQ:: PLASTIC : ?

- Ans  1. NJRGAYQ  
 2. NJYQRGA  
 3. NYQRGAJ  
 4. NGAJYQR

Question ID : 26433070324  
Status : Answered  
Chosen Option : 2

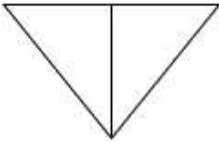


Q.18 Select the option figure which is embedded in the given figure. (Rotation is NOT allowed)

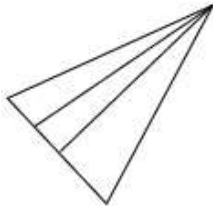


Ans

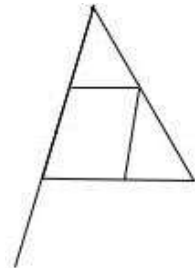
✗ 1.



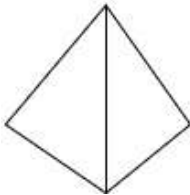
✗ 2.



✓ 3.



✗ 4.



KD Job Updates

Question ID : 26433069346

Status : Answered

Chosen Option : 3

Q.19 Which two signs should be interchanged to make the below equation mathematically correct?

$$24 + 18 \times 40 - 10 \div 20 = 76$$

Ans ✗ 1. - and +

✗ 2. + and ÷

✓ 3. ÷ and -

✗ 4. + and ×

Question ID : 264330117502

Status : Answered

Chosen Option : 3

**Q.20** Select the option that is related to the fifth term in the same way as the second term is related to the first term and fourth term is related to the third term.  
RAYMOND : MYARDNO :: COMMAND : MMOCDNA :: COMPARE : ?

- Ans
- 1. ERAPMOC
  - 2. AECORMP
  - 3. PARECOM
  - 4. PMOCERA

Question ID : 26433067266  
Status : Answered  
Chosen Option : 4

Section : Part-B-General Knowledge and General awareness

**Q.1** The main items of \_\_\_\_\_ expenditure are interest payments, defence services, subsidies.

- Ans
- 1. waste
  - 2. plan
  - 3. household
  - 4. non-plan

Question ID : 264330115289  
Status : Answered  
Chosen Option : 4

**Q.2** Which classical dance generally narrates the story of the feminine form of Vishnu?

- Ans
- 1. Sattriya
  - 2. Kathak
  - 3. Manipuri
  - 4. Mohiniattam

Question ID : 26433072920  
Status : Answered  
Chosen Option : 2

**Q.3** India has a parliamentary form of government which is a feature borrowed from the \_\_\_\_\_ Constitution.

- Ans
- 1. Britain
  - 2. South Africa
  - 3. United States of America
  - 4. Australia

Question ID : 26433089178  
Status : Answered  
Chosen Option : 1

**Q.4** Savitribai, together with her husband Jyotirao Phule, founded one of India's first girls' schools in Pune, at Bhide Wada in \_\_\_\_\_.

- Ans
- 1. 1855
  - 2. 1844
  - 3. 1857
  - 4. 1848

Question ID : 26433089886  
Status : Answered  
Chosen Option : 1

**Q.5** Except for the deep sea hydrothermal ecosystem, sun is the only source of energy for all ecosystems on Earth. What comes next in the energy food chain?

- Ans
- 1. herbivores
  - 2. man
  - 3. plants
  - 4. carnivores

Question ID : 264330115196  
Status : Answered  
Chosen Option : 3

**Q.6** In India, in the sphere of law making, a Bill does not become an Act unless it receives the assent of the \_\_\_\_\_.

- Ans
- 1. Attorney General
  - 2. Prime Minister
  - 3. Vice President
  - 4. President

Question ID : 26433086846  
Status : Answered  
Chosen Option : 4

**Q.7** Which sector of Central Reserve Police Force will be headed by Inspector General Seema Dhundiya as announced in November 2022?

- Ans
- 1. Bihar
  - 2. Jharkhand
  - 3. Uttar Pradesh
  - 4. Rajasthan

Question ID : 264330114992  
Status : Answered  
Chosen Option : 1

Q.8 In \_\_\_\_\_, Babur defeated Ibrahim Lodi at Panipat.

- Ans
- 1. 1528
  - 2. 1532
  - 3. 1530
  - 4. 1526

Question ID : 26433089190  
Status : Answered  
Chosen Option : 4

Q.9 The Food Corporation of India procures foodgrains from the farmers at the government announced \_\_\_\_\_.

- Ans
- 1. maximum retail price
  - 2. competitive price
  - 3. minimum support price
  - 4. discounted price

Question ID : 264330115536  
Status : Answered  
Chosen Option : 3

Q.10 What is the chemical formula of Propyne?

- Ans
- 1.  $C_4H_5$
  - 2.  $C_3H_4$
  - 3.  $C_4H_4$
  - 4.  $C_3H_5$

Question ID : 264330115158  
Status : Not Answered  
Chosen Option : --

Q.11 An Act to protect children from offences of sexual assault, sexual harassment and pornography and provide for establishment of Special Courts, referred as \_\_\_\_\_ (POCSO).

- Ans
- 1. Protection of Children from Sexual Offences Act, 2012
  - 2. Protection of Children from Sexual Offences Act, 2013
  - 3. Prevention of Children from Sexual Offences Act, 2012
  - 4. Protection of Child from Sexual Ordeal Act, 2012

Question ID : 264330116214  
Status : Answered  
Chosen Option : 1

Q.12 Which of the following scientists is known as the father of the Green revolution in India?

- Ans
- 1. Salim Ali
  - 2. Meghnad Saha
  - 3. P C Mahalanobis
  - 4. M.S. Swaminathan

Question ID : 264330116148  
Status : Answered  
Chosen Option : 4

Q.13 Indian athlete Somdev Devvarman is associated with, which of the following sports?

- Ans
- 1. Table Tennis
  - 2. Lawn Tennis
  - 3. Hockey
  - 4. Football

Question ID : 264330116282  
Status : Not Answered  
Chosen Option : --

Q.14 Nearly \_\_\_\_\_ countries of the world are currently members of the WTO. (as on June 2014)

- Ans
- 1. 225
  - 2. 198
  - 3. 160
  - 4. 128

Question ID : 264330115387  
Status : Answered  
Chosen Option : 2

Q.15 According to NITI Aayog's Multidimensional Poverty Index (MPI) 2021, which among the following was the poorest state in the country?

- Ans
- 1. Bihar
  - 2. Jharkhand
  - 3. Uttar Pradesh
  - 4. Punjab

Question ID : 264330116068  
Status : Answered  
Chosen Option : 1

Q.16 Holi is the festival of colours, celebrated in the Hindu month of \_\_\_\_\_.

- Ans
- 1. Ashvin
  - 2. Kartik
  - 3. Chaitra
  - 4. Phalgun

Question ID : 264330115099  
Status : Answered  
Chosen Option : 4

Q.17 As of November 2022, who among the following is the Governor of Maharashtra, India?

- Ans
- 1. Bhagat Singh Koshyari
  - 2. Arif Mohammed Khan
  - 3. Ganesh Lal Mathur
  - 4. Mangubhai Chaganbhai Patel

Question ID : 264330114923  
Status : Answered  
Chosen Option : 1

Q.18 Which place's distribution of pressure influences the weather conditions over India in winter?

- Ans
- 1. Antarctica
  - 2. Central and Western Asia
  - 3. South East Asia
  - 4. North America

Question ID : 26433086706  
Status : Answered  
Chosen Option : 2

Q.19 'Kalarathnam' from Kerala Kalamandalam 2016 and 'Kalaasree' 2011 from the Kerala Sangeetha Natak Akademi was awarded to\_\_\_\_\_.

- Ans
- 1. Jatin Goswami
  - 2. Anuradha Pandey
  - 3. Sunanda Nair
  - 4. M.R Krishnamurthy

Question ID : 264330115868  
Status : Not Answered  
Chosen Option : --

Q.20 2022 Paralympics winter games was held in \_\_\_\_\_.

- Ans
- 1. Russia
  - 2. China
  - 3. India
  - 4. Japan

Question ID : 264330115918  
Status : Answered  
Chosen Option : 2

Section : Part-C-Elementary Mathematics

Q.1 If the slant height and radius of a cone are 12 cm and 7 cm, respectively, then find the total surface area.

- Ans
- 1.  $841 \text{ cm}^2$
  - 2.  $481 \text{ cm}^2$
  - 3.  $418 \text{ cm}^2$
  - 4.  $448 \text{ cm}^2$

Question ID : 26433073047  
Status : Answered  
Chosen Option : 3

Q.2 A shopkeeper announces a discount of 18% on every item in his store. What price should a customer pay for an item of Rs.5,583? (in Rs., rounded off to the nearest integer)

- Ans
- 1. 4578
  - 2. 3980
  - 3. 4275
  - 4. 3650

Question ID : 26433075760  
Status : Answered  
Chosen Option : 1

Q.3 The population of a town is 64,000 which grows by  $\frac{1}{8}$ <sup>th</sup> of its current population every year. What will be the population after two years?

- Ans
- 1. 81000
  - 2. 78000
  - 3. 74000
  - 4. 72000

Question ID : 26433076040  
Status : Answered  
Chosen Option : 1

Q.4 Find the principal if the interest compounded at the rate of 12% per annum, compounding annually for 2 years is Rs.1,908.

- Ans
- 1. Rs.6,500
  - 2. Rs.5,400
  - 3. Rs.7,500
  - 4. Rs.4,500

Question ID : 26433066315  
Status : Answered  
Chosen Option : 3

Q.5 What is the radius of the base of a cylindrical container of volume  $2,640 \text{ cm}^3$  with height 21cm?

(Take  $\pi = \frac{22}{7}$ )

- Ans
- 1. 1.64 cm
  - 2. 5.24 cm
  - 3. 2.46 cm
  - 4. 6.32 cm

Question ID : 26433076255  
Status : Answered  
Chosen Option : 4

Q.6 Sum of 2 natural numbers is 140 and their HCF and LCM are 28 and 168 respectively. Find the difference between the numbers.

- Ans
- 1. 21
  - 2. 14
  - 3. 7
  - 4. 28

Question ID : 264330116640  
Status : Not Answered  
Chosen Option : --

Q.7 Find the fourth proportional of  $(a^4 - b^4)$ ,  $(a^2 - ab)$  and  $(a^2 + b^2)$ .

- Ans
- 1.  $\frac{a}{a+b}$
  - 2.  $(a-b)$
  - 3.  $(a+b)$
  - 4.  $\frac{b}{a+b}$

Question ID : 26433075554  
Status : Answered  
Chosen Option : 4



Q.8 Akshit is selling a suitcase marked at Rs.5,000 by offering a 10% discount, and further offers a 10% discount if the payment is made in cash. A customer bought the suitcase from Akshit and paid him in cash. How much amount (in Rs.) did he pay to Akshit?

- Ans
- 1. 4,150
  - 2. 4,200
  - 3. 4,500
  - 4. 4,050

Question ID : 26433080380  
Status : Answered  
Chosen Option : 4

Q.9 A milkman bought 90 litres of milk for Rs.1,630 and added 15 litres of water. If he sells it at Rs.19.00 per litre, his profit percentage will be:

- Ans
- 1.  $22\frac{64}{163}\%$
  - 2.  $22\frac{14}{163}\%$
  - 3.  $12\frac{64}{163}\%$
  - 4.  $20\frac{64}{163}\%$

Question ID : 26433074988  
Status : Answered  
Chosen Option : 1

Q.10 What is the percentage loss when the cost price and selling price of an article are in the ratio of 5 : 3?

- Ans
- 1. 60 percent
  - 2. 30 percent
  - 3. 40 percent
  - 4. 50 percent

Question ID : 26433079857  
Status : Answered  
Chosen Option : 3

Q.11 Ranu can finish a piece of work in 10 days while Ruby can finish the same work in 15 days. In how many days the whole work will be finished. If they work on alternate days, starting with Ranu?

- Ans
- 1. 13
  - 2. 12
  - 3. 11
  - 4. 14

Question ID : 26433080342  
Status : Answered  
Chosen Option : 2

Q.12 The fourth proportional to  $a^3 + a^2b + ab^2$ ,  $a + b$  and  $a^2 + ab + b^2$  is:

- Ans
- 1.  $\frac{b}{a+b}$
  - 2.  $1 + \frac{a}{b}$
  - 3.  $\frac{a}{a+b}$
  - 4.  $1 + \frac{b}{a}$

Question ID : 26433081580  
Status : Answered  
Chosen Option : 2

Q.13 यदि  $y$  का  $x\%$ , 90 के  $\frac{2}{3}$  के बराबर है, तो  $xy$  का मान ----- है।

- Ans
- 1. 100
  - 2. 6000
  - 3. 60
  - 4. 90

Question ID : 26433073004  
Status : Answered  
Chosen Option : 2

Q.14 P takes 12 minutes to complete one round of a circular track and R takes 18 minutes to complete the same round. If they start at the same time from the same point in the same direction at 12:30 p.m., then at which of the following times will they meet at the starting point on the same day?

- Ans
- 1. 2:08 p.m.
  - 2. 2:18 p.m.
  - 3. 2:38 p.m.
  - 4. 2:28 p.m.

Question ID : 26433071264  
Status : Answered  
Chosen Option : 2

Q.15 A car takes 5 hours to cover a distance, if its speed is 30 km/h. What should be its speed to cover the same distance in 2.5 hours?

- Ans
- 1. 40 km/h
  - 2. 60 km/h
  - 3. 70 km/h
  - 4. 50 km/h

Question ID : 26433066366  
Status : Answered  
Chosen Option : 2

Q.16 If the average marks of two batches of 45 and 50 students, respectively, are 78 and 65, then the average marks of all the students are:

- Ans
- 1.  $\frac{1252}{13}$
  - 2.  $\frac{1352}{19}$
  - 3.  $\frac{1052}{13}$
  - 4.  $\frac{1152}{19}$

Question ID : 26433080100  
Status : Answered  
Chosen Option : 2

Q.17 If 'a' and 'b' are prime numbers, which of the following CANNOT be the sum of 'a' and 'b'? (Where a and b are distinct prime numbers)

- Ans
- 1. 6
  - 2. 10
  - 3. 28
  - 4. 14

Question ID : 26433082609  
Status : Answered  
Chosen Option : 3

Q.18 Pramod, Akhil, and Raman can do a piece of work in 14 days. Akhil and Raman can do the same work in 77 days. Find the number of days in which Pramod can complete the same work.

- Ans
- 1. 154/9 days
  - 2. 177/9 days
  - 3. 164/9 days
  - 4. 144/9 days

Question ID : 264330116898  
Status : Answered  
Chosen Option : 1

Q.19 The average age of husband and wife is 24 years. The age of their son is  $\frac{1}{9}$ th of the age of the husband. The wife is 6 years younger to the husband. Find the average age of all three members of family.

- Ans
- 1. 16 years
  - 2. 15 years
  - 3. 18 years
  - 4. 17 years

Question ID : 264330116696  
Status : Answered  
Chosen Option : 4

Q.20 Due to leakage in a tank, there are 220 liters of water left in the tank which originally held 240 liters. What is percent loss of water?

- Ans
- 1. 6.11 percent
  - 2. 8.33 percent
  - 3. 5.8 percent
  - 4. 7.4 percent

Question ID : 264330116818  
Status : Answered  
Chosen Option : 2

Section : Part-D-English

Q.1 Select the most appropriate synonym of the word given in brackets to fill in the blank. Their relationship is quite \_\_\_\_\_ (cordial).

- Ans
- 1. hostile
  - 2. formal
  - 3. warm
  - 4. artful

Question ID : 26433084719  
Status : Answered  
Chosen Option : 2

Q.2 Select the most appropriate ANTONYM of the given word.

Progressive

- Ans
- 1. Conservative
  - 2. Scanty
  - 3. Repeated
  - 4. Moving

Question ID : 26433072666  
Status : Answered  
Chosen Option : 1

**Q.3 Select the most appropriate synonym of the given word.**

**Scared**

- Ans  1. Reassured  
 2. Calm  
 3. Confident  
 4. Frightened

Question ID : 26433073689  
Status : Answered  
Chosen Option : 4

**Q.4 Select the most appropriate ANTONYM of the given word.**

**Frankness**

- Ans  1. Transparency  
 2. Deception  
 3. Openness  
 4. Strangeness

Question ID : 26433073800  
Status : Answered  
Chosen Option : 4

**Q.5 Select the most appropriate meaning of the given idiom.**

**Pour out one's heart**

- Ans  1. To challenge  
 2. To create a record  
 3. To ask for something  
 4. To express openly

Question ID : 26433073704  
Status : Answered  
Chosen Option : 4

**Q.6 Select the most appropriate meaning of the given idiom.**

**A chip on one's shoulder**

- Ans  1. An attitude that leads one to become easily angered  
 2. Being appreciated  
 3. Huge achievement  
 4. Injured shoulder

Question ID : 26433072437  
Status : Answered  
Chosen Option : 2

**Q.7** Select the most appropriate option that can substitute the underlined segment in the given sentence.

The manager's behaviour was the quintessence of professionalism.

- Ans
- 1. insignificant appearance
  - 2. apparent display
  - 3. perfect example
  - 4. volatile aspect

Question ID : 26433099877  
Status : Answered  
Chosen Option : 3

**Q.8** Select the INCORRECTLY spelt word.

- Ans
- 1. Electrician
  - 2. Artisen
  - 3. Technician
  - 4. Plumber

Question ID : 26433073498  
Status : Answered  
Chosen Option : 2

**Q.9** Select the most appropriate homonym of the given word.

Flea

- Ans
- 1. Flee
  - 2. Fleece
  - 3. Flew
  - 4. Fly

Question ID : 26433086349  
Status : Answered  
Chosen Option : 3

**Q.10** Select the most appropriate ANTONYM of the given word.

Candid

- Ans
- 1. Honest
  - 2. Blunt
  - 3. Tactful
  - 4. Simple

Question ID : 26433085198  
Status : Answered  
Chosen Option : 3

Q.11 Select the most appropriate word segment for the underlined word in the given sentence.

The wooden miniature that was being shown as the show stopper in the exhibition appealed to my father.

- Ans
- 1. on advertisement
  - 2. on activity
  - 3. on display
  - 4. on arrangement

Question ID : 26433088311  
Status : Answered  
Chosen Option : 3

Q.12 Parts of the following sentence have been given as options. One of them may contain an error. Select the part that contains the error from the given options. If you don't find any error, mark 'No error' as your answer.

An old man sit down and read his book on his lush green lawn.

- Ans
- 1. An old man sit down
  - 2. and read his book
  - 3. on his lush green lawn
  - 4. No error

Question ID : 26433092134  
Status : Answered  
Chosen Option : 1

Q.13 Parts of the given sentence have been given as options. One of them contains a spelling error. Select the option that rectifies the error.

Participating in intrnships is a great way to get a taste of changes taking place in the industry.

- Ans
- 1. takeng
  - 2. internships
  - 3. particepating
  - 4. indastry

Question ID : 26433072042  
Status : Answered  
Chosen Option : 2

Q.14 In the following passage, some words have been deleted. Read the passage carefully and select the most appropriate option to fill in the blanks.

We all get goose bumps which are a reflex reaction by a human (1)\_\_\_\_\_ to a sudden drop in temperatures or feelings of panic, anger or extreme fear. They are also (2)\_\_\_\_\_ by itty-bitty muscles in our hair follicles.

- Ans
- 1. figure; generated
  - 2. shape; constructed
  - 3. form; fabricated
  - 4. body; created

Question ID : 26433084743  
Status : Answered  
Chosen Option : 4

**Q.15 Select the most appropriate synonym of the given word.**

**Bliss**

- Ans
- 1. Pain
  - 2. Bane
  - 3. Joy
  - 4. Educated

Question ID : 26433072184  
Status : Answered  
Chosen Option : 3

**Comprehension:**

In the following passage, some words have been deleted. Read the passage carefully and select the most appropriate option to fill in each blank.

Everybody (1)\_\_\_\_\_ of age, shape, size and ability needs to become more active every day. We should all be moving more. Did you know that an active life is (2)\_\_\_\_\_ for physical and mental health and well-being? Regular physical activity can help (3)\_\_\_\_\_ our risk of cancer and type 2 diabetes, and conditions like obesity, hypertension and depression. Being active at every age (4)\_\_\_\_\_ the quality of life and everyone's chances of remaining healthy and (5)\_\_\_\_\_.

**SubQuestion No : 16**

**Q.16 Select the most appropriate option to fill in blank number 1.**

- Ans
- 1. regardless
  - 2. no matter
  - 3. senseless
  - 4. careless

Question ID : 26433088174  
Status : Answered  
Chosen Option : 1

**Comprehension:**

In the following passage, some words have been deleted. Read the passage carefully and select the most appropriate option to fill in each blank.

Everybody (1)\_\_\_\_\_ of age, shape, size and ability needs to become more active every day. We should all be moving more. Did you know that an active life is (2)\_\_\_\_\_ for physical and mental health and well-being? Regular physical activity can help (3)\_\_\_\_\_ our risk of cancer and type 2 diabetes, and conditions like obesity, hypertension and depression. Being active at every age (4)\_\_\_\_\_ the quality of life and everyone's chances of remaining healthy and (5)\_\_\_\_\_.

**SubQuestion No : 17**

**Q.17 Select the most appropriate option to fill in blank number 2.**

- Ans
- 1. essential
  - 2. primary
  - 3. organic
  - 4. particular

Question ID : 26433088175  
Status : Answered  
Chosen Option : 1



**Comprehension:**

In the following passage, some words have been deleted. Read the passage carefully and select the most appropriate option to fill in each blank.

Everybody (1)\_\_\_\_\_ of age, shape, size and ability needs to become more active every day. We should all be moving more. Did you know that an active life is (2)\_\_\_\_\_ for physical and mental health and well-being?

Regular physical activity can help (3)\_\_\_\_\_ our risk of cancer and type 2 diabetes, and conditions like obesity, hypertension and depression. Being active at every age (4)\_\_\_\_\_ the quality of life and everyone's chances of remaining healthy and (5)\_\_\_\_\_.

**SubQuestion No : 18**

**Q.18 Select the most appropriate option to fill in blank number 3.**

- Ans  1. change  
 2. decrease  
 3. increase  
 4. interpolate

Question ID : 26433088176

Status : Answered

Chosen Option : 2

**Comprehension:**

In the following passage, some words have been deleted. Read the passage carefully and select the most appropriate option to fill in each blank.

Everybody (1)\_\_\_\_\_ of age, shape, size and ability needs to become more active every day. We should all be moving more. Did you know that an active life is (2)\_\_\_\_\_ for physical and mental health and well-being?

Regular physical activity can help (3)\_\_\_\_\_ our risk of cancer and type 2 diabetes, and conditions like obesity, hypertension and depression. Being active at every age (4)\_\_\_\_\_ the quality of life and everyone's chances of remaining healthy and (5)\_\_\_\_\_.

**SubQuestion No : 19**

**Q.19 Select the most appropriate option to fill in blank number 4.**

- Ans  1. manages  
 2. grows  
 3. increases  
 4. decreases

Question ID : 26433088177

Status : Answered

Chosen Option : 3

**Comprehension:**

In the following passage, some words have been deleted. Read the passage carefully and select the most appropriate option to fill in each blank.

Everybody (1)\_\_\_\_\_ of age, shape, size and ability needs to become more active every day. We should all be moving more. Did you know that an active life is (2)\_\_\_\_\_ for physical and mental health and well-being?

Regular physical activity can help (3)\_\_\_\_\_ our risk of cancer and type 2 diabetes, and conditions like obesity, hypertension and depression. Being active at every age (4)\_\_\_\_\_ the quality of life and everyone's chances of remaining healthy and (5)\_\_\_\_\_.

**SubQuestion No : 20**

**Q.20 Select the most appropriate option to fill in blank number 5.**

- Ans  1. automatic  
 2. adamant  
 3. independent  
 4. awake

Question ID : 26433088178  
Status : Answered  
Chosen Option : 3

Section : Part-D-Hindi

**Q.1 निम्न में से किरण के पर्यायवाची शब्द का चयन कीजिए।**

- Ans  1. आभा  
 2. धूमकेतु  
 3. प्रभा  
 4. ज्योति

Question ID : 26433074414  
Status : Not Answered  
Chosen Option : --

**Q.2 निम्नलिखित विकल्पों में से किस एक वाक्य में क्रिया सम्बन्धी अशुद्धि है?**

- Ans  1. माँ बच्चे को खाना खिलाती है।  
 2. बच्चा खाना खाता है।  
 3. कृपया एक गिलास पानी बुझाइए।  
 4. बच्चा पढ़ता है।

Question ID : 26433091234  
Status : Not Answered  
Chosen Option : --

Q.3 निम्नलिखित वाक्यांश के लिए उपयुक्त सार्थक शब्द क्या होगा?  
वह स्त्री जो वेदों का ज्ञान रखती हो

- Ans  1. विदुषी  
 2. विदूषक  
 3. ग्यात्ति  
 4. ज्ञानी

Question ID : 26433073312  
Status : Not Answered  
Chosen Option : --

Q.4 निम्नलिखित मुहावरे के सही अर्थ का चयन विकल्पों में से कीजिए।  
पैरों में मेहंदी लगाकर बैठना

- Ans  1. आलस्य और लाचारी वश घर में पड़े रहना  
 2. स्वावलंबी होना  
 3. लाभ का अवसर उठाना  
 4. मृत्यु को प्राप्त करना

Question ID : 26433070009  
Status : Not Answered  
Chosen Option : --

Q.5 निम्नलिखित विकल्पों में से 'चुल्लू-भर पानी में डूब मरना' मुहावरे का अर्थ क्या है?

- Ans  1. शर्म या ग्लानि अनुभव करना  
 2. असफल साबित होना  
 3. गर्व महसूस करना  
 4. हताश होना

Question ID : 26433062553  
Status : Not Answered  
Chosen Option : --

Q.6 संज्ञा या विशेषण के मेल से बनने वाली क्रिया प्रेरणार्थक क्रिया है। रेखांकित पद को बदल कर शुद्ध कीजिए।

- Ans  1. पूर्वकालिक क्रिया  
 2. क्रियार्थक संज्ञा  
 3. नामबोधक क्रिया  
 4. सहायक क्रिया

Question ID : 26433063041  
Status : Not Answered  
Chosen Option : --

Q.7 रेखांकित शब्द-समूह के लिए सर्वाधिक उपयुक्त विकल्प चुनें।  
मेरा घर पर्वत के ऊपर की समतल भूमि पर है।

- Ans
- 1. तराई
  - 2. अधित्यका
  - 3. घाटी
  - 4. उपत्यका

Question ID : 26433062284  
Status : Not Answered  
Chosen Option : --

Q.8 'सूर्योदय \_\_\_\_\_।' उपर्युक्त वाक्य में रिक्त स्थान के लिए उपयुक्त विकल्प निम्न में से क्या होगा?

- Ans
- 1. का अर्थ सूर्य का उदय होना होता है
  - 2. का अर्थ सूर्य का छिपना होता है
  - 3. का अर्थ सूर्य की गर्मी से होता है
  - 4. का अर्थ सूर्य का प्रकाश होता है

Question ID : 26433067038  
Status : Not Answered  
Chosen Option : --

Q.9 निम्न वाक्य को शुद्ध कीजिए।  
तुम इस बार अधिक परिश्रम किए हो, इसलिए सफलता का अधिक आसा है।

- Ans
- 1. तुमने बहुत परिश्रम किया है, इसलिए सफलता का आशा है।
  - 2. तुमने इस बार अधिक परिश्रम के कारण सफलता मिलेगी।
  - 3. तुम अधिक परिश्रम किए हो, अतः सफलता की अधिक आशा है।
  - 4. तुमने इस बार अधिक परिश्रम किया है, इसलिए सफलता की आशा है।

Question ID : 26433063078  
Status : Not Answered  
Chosen Option : --

Q.10 'ईश्वर के प्रति प्रगाढ़ एवं स्थायी आस्था का भाव \_\_\_\_\_ कहलाता है।' उपरोक्त वाक्य में रिक्त स्थान पर किस शब्द का प्रयोग सर्वाधिक उपयुक्त होगा?

- Ans
- 1. भक्ति
  - 2. मुक्ति
  - 3. विरक्ति
  - 4. आसक्ति

Question ID : 26433067006  
Status : Not Answered  
Chosen Option : --

Q.11 निम्नलिखित वाक्यांश के लिए सार्थक शब्द का चयन कीजिए।  
जिसकी उपमा न हो

- Ans  1. अकथनीय  
 2. उपमान  
 3. उपमेय  
 4. अनुपम

Question ID : 26433069979  
Status : Not Answered  
Chosen Option : --

Q.12 निम्नलिखित वाक्य में अशुद्धि पहचानें।  
हमें हमेशा सच का साथ देना चाहिए।

- Ans  1. हमें  
 2. चाहिए  
 3. हमेशा  
 4. साथ

Question ID : 26433066824  
Status : Not Answered  
Chosen Option : --

Q.13 गोलियों की बाढ़ हो गई।  
उपरोक्त वाक्य में रेखांकित शब्द के स्थान पर उचित शब्द क्या होगा?

- Ans  1. घटा  
 2. समुद्र  
 3. बहार  
 4. बौछार

Question ID : 26433062780  
Status : Not Answered  
Chosen Option : --

Q.14 निम्न वाक्य में रेखांकित शब्द के विलोम शब्द से रिक्त स्थान की पूर्ति कीजिए।  
राग और \_\_\_\_ दोनों विपरीत भाव हैं।

- Ans  1. द्वेष  
 2. रहित  
 3. रागी  
 4. सराग

Question ID : 26433085075  
Status : Not Answered  
Chosen Option : --

Q.15 आकाश में बिजली चमक रही है।  
उपरोक्त वाक्य में रेखांकित शब्द के उचित पर्यायवाची शब्द का चयन विकल्पों में से कीजिए।

- Ans
- 1. खनक
  - 2. वासव
  - 3. चपला
  - 4. धनद

Question ID : 26433079623  
Status : Not Answered  
Chosen Option : --

**Comprehension:**

निम्नलिखित गद्यांश में कुछ शब्दों को हटा दिया गया है। दिए गए विकल्पों की सहायता से रिक्त स्थानों की पूर्ति कीजिए। प्रत्येक संख्या के लिए सबसे उपयुक्त विकल्प का चयन कीजिए।  
मनुष्य की पहचान उसके आचरण और 1. \_\_\_\_\_ से होती है। सात्विक व्यवहार तथा धर्म, नीति आदि की 2. \_\_\_\_\_ से किया जाने वाला अच्छा और शुभ आचरण 'सदाचार' है। इसके ठीक 3. \_\_\_\_\_ 'भ्रष्टाचार' शब्द है। जो मनुष्य दूषित और 4. \_\_\_\_\_ आचरण करता हो, वह भ्रष्टाचारी कहलाता है। भ्रष्टाचार एक प्रकार का 5. \_\_\_\_\_ विकार है।

**SubQuestion No : 16**

Q.16 रिक्त स्थान 1 की पूर्ति के लिए सबसे उपयुक्त विकल्प का चयन कीजिए।

- Ans
- 1. मित्र
  - 2. परिवार
  - 3. व्यवहार
  - 4. परमार्थ

Question ID : 264330111035  
Status : Not Answered  
Chosen Option : --

**Comprehension:**

निम्नलिखित गद्यांश में कुछ शब्दों को हटा दिया गया है। दिए गए विकल्पों की सहायता से रिक्त स्थानों की पूर्ति कीजिए। प्रत्येक संख्या के लिए सबसे उपयुक्त विकल्प का चयन कीजिए।  
मनुष्य की पहचान उसके आचरण और 1. \_\_\_\_\_ से होती है। सात्विक व्यवहार तथा धर्म, नीति आदि की 2. \_\_\_\_\_ से किया जाने वाला अच्छा और शुभ आचरण 'सदाचार' है। इसके ठीक 3. \_\_\_\_\_ 'भ्रष्टाचार' शब्द है। जो मनुष्य दूषित और 4. \_\_\_\_\_ आचरण करता हो, वह भ्रष्टाचारी कहलाता है। भ्रष्टाचार एक प्रकार का 5. \_\_\_\_\_ विकार है।

**SubQuestion No : 17**

Q.17 रिक्त स्थान 2 की पूर्ति के लिए सबसे उपयुक्त विकल्प का चयन कीजिए।

- Ans
- 1. संपत्ति
  - 2. सृष्टि
  - 3. दृष्टि
  - 4. कमी

Question ID : 264330111036  
Status : Not Answered  
Chosen Option : --

**Comprehension:**

निम्नलिखित गद्यांश में कुछ शब्दों को हटा दिया गया है। दिए गए विकल्पों की सहायता से रिक्त स्थानों की पूर्ति कीजिए। प्रत्येक संख्या के लिए सबसे उपयुक्त विकल्प का चयन कीजिए।  
मनुष्य की पहचान उसके आचरण और 1. \_\_\_\_\_ से होती है। सात्विक व्यवहार तथा धर्म, नीति आदि की 2. \_\_\_\_\_ से किया जाने वाला अच्छा और शुभ आचरण 'सदाचार' है। इसके ठीक 3. \_\_\_\_\_ 'भ्रष्टाचार' शब्द है। जो मनुष्य दूषित और 4. \_\_\_\_\_ आचरण करता हो, वह भ्रष्टाचारी कहलाता है। भ्रष्टाचार एक प्रकार का 5. \_\_\_\_\_ विकार है।

**SubQuestion No : 18**

Q.18 रिक्त स्थान 3 की पूर्ति के लिए सबसे उपयुक्त विकल्प का चयन कीजिए।

- Ans  1. विपरीत  
 2. अच्छी  
 3. मिली  
 4. साथ

Question ID : 264330111037

Status : Not Answered

Chosen Option : --

**Comprehension:**

निम्नलिखित गद्यांश में कुछ शब्दों को हटा दिया गया है। दिए गए विकल्पों की सहायता से रिक्त स्थानों की पूर्ति कीजिए। प्रत्येक संख्या के लिए सबसे उपयुक्त विकल्प का चयन कीजिए।  
मनुष्य की पहचान उसके आचरण और 1. \_\_\_\_\_ से होती है। सात्विक व्यवहार तथा धर्म, नीति आदि की 2. \_\_\_\_\_ से किया जाने वाला अच्छा और शुभ आचरण 'सदाचार' है। इसके ठीक 3. \_\_\_\_\_ 'भ्रष्टाचार' शब्द है। जो मनुष्य दूषित और 4. \_\_\_\_\_ आचरण करता हो, वह भ्रष्टाचारी कहलाता है। भ्रष्टाचार एक प्रकार का 5. \_\_\_\_\_ विकार है।

**SubQuestion No : 19**

Q.19 रिक्त स्थान 4 की पूर्ति के लिए सबसे उपयुक्त विकल्प का चयन कीजिए।

- Ans  1. निंदनीय  
 2. सम्मानित  
 3. विवश  
 4. परमार्थी

Question ID : 264330111038

Status : Not Answered

Chosen Option : --

**Comprehension:**

निम्नलिखित गद्यांश में कुछ शब्दों को हटा दिया गया है। दिए गए विकल्पों की सहायता से रिक्त स्थानों की पूर्ति कीजिए। प्रत्येक संख्या के लिए सबसे उपयुक्त विकल्प का चयन कीजिए।  
मनुष्य की पहचान उसके आचरण और 1. \_\_\_\_\_ से होती है। सात्विक व्यवहार तथा धर्म, नीति आदि की 2. \_\_\_\_\_ से किया जाने वाला अच्छा और शुभ आचरण 'सदाचार' है। इसके ठीक 3. \_\_\_\_\_ 'भ्रष्टाचार' शब्द है। जो मनुष्य दूषित और 4. \_\_\_\_\_ आचरण करता हो, वह भ्रष्टाचारी कहलाता है। भ्रष्टाचार एक प्रकार का 5. \_\_\_\_\_ विकार है।

**SubQuestion No : 20**

**Q.20** रिक्त स्थान 5 की पूर्ति के लिए सबसे उपयुक्त विकल्प का चयन कीजिए।

- Ans  1. स्वस्थ  
 2. मानसिक  
 3. व्यवहारिक  
 4. पारिवारिक

Question ID : 264330111039

Status : Not Answered

Chosen Option : --

KD Job Updates



# Constable GD in CAPFs SSF Rifleman GD in Assam Rifles and Sepoy in NCB Examination 2022

Roll Number	<b>KD Job Updates</b>
Candidate Name	<b>KD Job Updates</b>
Venue Name	TCS Gito Bitan
Exam Date	09/02/2023
Exam Time	11:45 AM - 12:45 PM
Subject	Constable GD Examination 2022

Section : **Part-A-General Intelligence and Reasoning**

**Q.1** Which option represents the correct order of the given words as they would appear in the English dictionary?

- 1 drain
- 2 dried
- 3 dreamt
- 4 drown
- 5 drunk

- Ans
- 1. 2,3,1,4,5
  - 2. 1,4,3,5,2
  - 3. 1,2,3,4,5
  - 4. 1,3,2,4,5

Question ID : 26433069296

Status : Answered

Chosen Option : 4

**Q.2** Seven people, A, B, C, D, E, F and G are sitting in a straight row, facing north. A sits third to the left of D. D sits to the extreme right. Only two people sit between A and F. B is an immediate neighbour of F. Only one person sits between C and D. G is not an immediate neighbour of A. Who sits between B and A?

- Ans
- 1. E
  - 2. G
  - 3. C
  - 4. F

Question ID : 26433056929

Status : Not Answered

Chosen Option : --

**Q.3** Select the option that is related to the third word in the same way as the second word is related to the first word.  
(The words must be considered as meaningful English words and must not be related to each other based on the number of letters/number of consonants/vowels in the word)

Soft : Hard :: Create : ?

- Ans
- 1. Destroy
  - 2. Building
  - 3. Save
  - 4. Maintain

Question ID : 26433079478  
Status : Answered  
Chosen Option : 1

**Q.4** Which of the following letter-clusters will replace the question mark (?) in the given series?

KPQZ, MNSX, OLUV, ?, SHYR

- Ans
- 1. QLWT
  - 2. QJVU
  - 3. RJVX
  - 4. QJWT

Question ID : 26433076432  
Status : Answered  
Chosen Option : 1

**Q.5** Which letter-cluster will replace the question mark (?) to complete the given series?

KMLN, PRQS, ? , ZBAC, EGFH

- Ans
- 1. WUVX
  - 2. UVWX
  - 3. UWVX
  - 4. UWXV

Question ID : 26433067724  
Status : Answered  
Chosen Option : 3

**Q.6** Which of the mathematical signs should be interchanged in the below equation to make it mathematically correct?

$135 \div 15 \times 54 + 6 - 18 = 252$

- Ans
- 1.  $\div$  and  $+$
  - 2.  $\div$  and  $\times$
  - 3.  $+$  and  $\times$
  - 4.  $+$  and  $-$

Question ID : 264330117528  
Status : Answered  
Chosen Option : 1

Q.7 In a certain code language, 'berry mango' is coded as 'xi xa', 'alpha berry tango' is coded as 'cun xi our', 'mango alpha' is coded as 'xa cun', and 'berry tango' is coded as 'xi our'. What is the code word for 'alpha'?

- Ans
- 1. xa
  - 2. xi
  - 3. our
  - 4. cun

Question ID : 26433069039  
Status : Answered  
Chosen Option : 4

Q.8 Six students Purple, Black, Gray, Indigo, Cyan and Yellow are sitting around a circular table facing the centre. Purple is sitting on the immediate left of Black. Cyan is sitting third to the left of Black. Gray is the immediate neighbour of Purple and Cyan. Indigo is sitting second to the right of Black. Yellow is sitting third to the right of Gray. Who is sitting between Gray and Indigo?

- Ans
- 1. Black
  - 2. Purple
  - 3. Yellow
  - 4. Cyan

Question ID : 26433081787  
Status : Not Answered  
Chosen Option : --

Q.9 In a certain code language,  
'A + B' means 'A is the brother of B',  
'A - B' means 'A is the mother of B',  
'A × B' means 'A is the husband of B' and  
'A ÷ B' means 'A is the sister of B'.  
If  $A \times G - T - N \div D + B$ , then which of the following statements is NOT correct?

- Ans
- 1. D is T's son.
  - 2. G is B's father's mother.
  - 3. A is N's mother's father.
  - 4. A is T's father.

Question ID : 26433070375  
Status : Answered  
Chosen Option : 1

Q.10 In a code language, 'ALMOND' is coded as LAOMDN and 'RAISIN' is coded as ARSINI.  
How will 'CASHEW' be coded in the same language?

- Ans
- 1. ACHSWE
  - 2. ACSHWE
  - 3. CASHWE
  - 4. CAHSWE

Question ID : 26433081084  
Status : Answered  
Chosen Option : 1

Q.11 Select the option that is related to the fifth term in the same way as the second term is related to the first term and the fourth term is related to the third term.

MEND : KHLG :: STIR : QWGU :: DESK : ?

- Ans  1. BHQN  
 2. BHPM  
 3. AGPM  
 4. AGQN

Question ID : 26433058008

Status : Not Attempted and  
Marked For Review

Chosen Option : --

Q.12 Three statements are given followed by three conclusions numbered I, II and III.

Assuming the statements to be true, even if they seem to be at variance with commonly known facts, decide which of the conclusions logically follow(s) from the statements.

Statements:

All gloves are bats.

All stumps are bats.

All bats are balls.

Conclusions:

I. All stumps are gloves.

II. Some balls are gloves.

III. Some balls are stumps.

- Ans  1. All conclusions follow  
 2. Only conclusions I and III follow  
 3. Only conclusions II and III follow  
 4. Only conclusions I and II follow

Question ID : 26433082309

Status : Answered

Chosen Option : 1

Q.13 Select the option that is related to the third term in the same way as the second term is related to the first term and the sixth term is related to the fifth term.

14 : 103 :: 16 : ? :: 18 : 167

- Ans  1. 133  
 2. 139  
 3. 135  
 4. 140

Question ID : 26433069092

Status : Answered

Chosen Option : 3

Q.14 Select the correct mirror image of the given figure when the mirror is placed at MN as shown below.

Ce5iT3Z76nMp1



Ans

✗ 1. 1qMnǝʌʌɛTiǝɔ

✓ 2. 1qMnǝʌʌɛTiǝɔ

✗ 3. 1qmNǝʌʌɛTiǝɔ

✗ 4. 1qmnǝʌʌɛTiǝɔ

Question ID : 26433085543

Status : Answered

Chosen Option : 2

Q.15 Which two numbers, from the given options, should be interchanged to make the given equation correct?

$$180 \div 20 - 27 \div (6 \times 4 - 19) + 175 = 1$$

Ans ✗ 1. 6 and 19

✓ 2. 175 and 27

✗ 3. 4 and 20

✗ 4. 6 and 20

Question ID : 26433082486

Status : Answered

Chosen Option : 2

Q.16 Which of the following numbers will replace the question marks (?) in the given series?

229, 230, 232, ?, 244, ?, 292

Ans ✓ 1. 236, 260

✗ 2. 238, 268

✗ 3. 239, 270

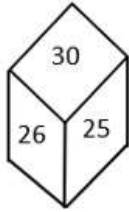
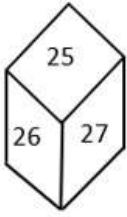
✗ 4. 240, 280

Question ID : 26433070224

Status : Not Answered

Chosen Option : --

Q.17 Two different positions of the same dice are shown. Find the number on the face opposite the face showing '27'.



- Ans
- 1. 25
  - 2. 30
  - 3. 29
  - 4. 28

Question ID : 26433089510  
Status : Answered  
Chosen Option : 2

Q.18 Which of the following numbers will replace the question mark (?) in the given series?  
56, 59, 68, ?, 176

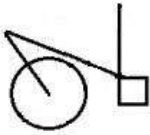
- Ans
- 1. 138
  - 2. 89
  - 3. 95
  - 4. 102

Question ID : 26433076746  
Status : Answered  
Chosen Option : 3

KD Job Updates

Q.19

Select the option figure in which the given figure is embedded as its part (rotation is not allowed).




Ans


✗ 1.



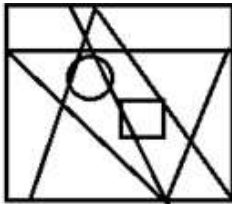
✓ 2.



✗ 3.



✗ 4.



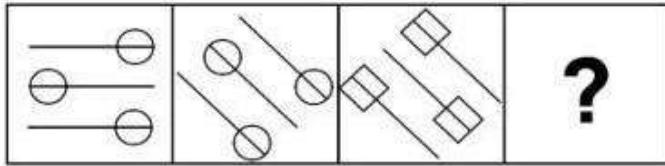
KD Job Updates

Question ID : 26433069540

Status : Not Answered

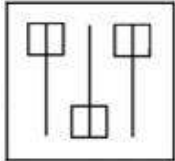
Chosen Option : --

Q.20 Find the options which is related to the third figure in the same manner as second figure is related with the first figure. (First figure is the leftmost figure.)

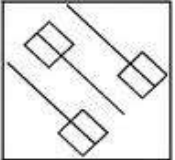


Ans

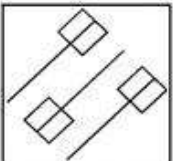
✓ 1.



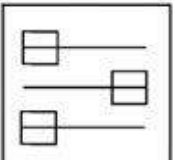
✗ 2.



✗ 3.



✗ 4.



Question ID : 26433078863  
Status : Answered  
Chosen Option : 1

Section : Part-B-General Knowledge and General awareness

Q.1 The Ministry of Culture organized "Tiranga Utsav" on \_\_\_\_\_, 2022 to celebrate the contributions of Pingali Venkayya to the country.

- Ans
- ✗ 1. 1st July
  - ✗ 2. 9th May
  - ✓ 3. 2nd August
  - ✗ 4. 5th September

Question ID : 264330115103  
Status : Not Answered  
Chosen Option : --



Q.2 Who among the Mauryan ruler pioneered the propagation of Bauddh Dhamma?

- Ans
- 1. Sampartii
  - 2. Devavarman
  - 3. Ashoka
  - 4. Bindusara

Question ID : 26433089857  
Status : Answered  
Chosen Option : 3

Q.3 Licensing policy of the government was primarily aimed to promote \_\_\_\_\_.

- Ans
- 1. employment in North-Eastern states
  - 2. regional equality
  - 3. development of schools and hospitals in smaller states
  - 4. growth of textiles in southern part of India

Question ID : 26433054779  
Status : Not Answered  
Chosen Option : --

Q.4 Gavari, a dance-drama is majorly performed in which of the following states of India?

- Ans
- 1. Rajasthan
  - 2. Odisha
  - 3. Manipur
  - 4. Kerala

Question ID : 26433071486  
Status : Answered  
Chosen Option : 1

Q.5 \_\_\_\_\_ is an example of plastic money.

- Ans
- 1. Legal tender
  - 2. Hard cash
  - 3. Credit card
  - 4. Coins

Question ID : 264330115315  
Status : Answered  
Chosen Option : 3

**Q.6** What best defines prokaryotic cells?  
I. Single chromosome  
II. Membrane-bound cell organelles absent

- Ans
- 1. Neither I nor II
  - 2. Only II
  - 3. Only I
  - 4. Both I and II

Question ID : 264330115238  
Status : Answered  
Chosen Option : 4

**Q.7** As of November 2022, who among the following is the Governor of Kerala, India?

- Ans
- 1. Mangubhai Chaganbhai Patel
  - 2. Ganesh Lal Mathur
  - 3. Bhagat Singh Koshyari
  - 4. Arif Mohammed Khan

Question ID : 264330114927  
Status : Not Attempted and Marked For Review  
Chosen Option : --

**Q.8** Which of the following trophy is associated with women's Badminton?

- Ans
- 1. Davis Cup
  - 2. Uber Cup
  - 3. Agha Khan Cup
  - 4. FIFA World Cup

Question ID : 264330116273  
Status : Answered  
Chosen Option : 1

**Q.9** The chemical name of Blue Vitriol is \_\_\_\_\_.

- Ans
- 1. Zinc Sulphate
  - 2. Sulphuric Acid
  - 3. Sodium Hydroxide
  - 4. Copper Sulphate

Question ID : 264330115162  
Status : Answered  
Chosen Option : 4

Q.10 Which year among the following did India host the Commonwealth Games?

Ans  1. 2008

2. 2010

3. 2014

4. 2012

Question ID : 264330115922  
Status : Answered  
Chosen Option : 4

Q.11 Which railway station was awarded 'Eat Right Station' certification with a 4-star rating, in November 2022?

Ans  1. New Delhi Railway Station

2. Howrah Junction Railway Station

3. Chhatrapati Shivaji Terminus

4. Bhopal Junction Railway Station

Question ID : 264330115562  
Status : Answered  
Chosen Option : 2

Q.12 A Khilafat Committee was formed in \_\_\_\_\_ in March 1919.

Ans  1. Bombay

2. Delhi

3. Amritsar

4. Calcutta

Question ID : 26433090587  
Status : Answered  
Chosen Option : 3

Q.13 There is no requirement to maintain any minimum balance in \_\_\_\_\_ accounts.

Ans  1. Pradhan sevak Jan Dhan Yojana

2. Pradhan Mantri Jan Dhan Yojana

3. Pradhan Mantri Jan Jan Yojana

4. Jan Kalyan Yojana

Question ID : 264330116205  
Status : Answered  
Chosen Option : 2

Q.14 Which article of the Indian Constitution Deals with Matters relating to, or connected with, the election of a President or Vice-President?

- Ans  1. 69  
 2. 70  
 3. 71  
 4. 68

Question ID : 264330115661  
Status : Answered  
Chosen Option : 3

Q.15 Who was awarded the Sangeet Natak Akademi award and the Tulsi Samman by the government of Madhya Pradesh for contributions in Folk and tribal Dance?

- Ans  1. Vempati Chinna Satyam  
 2. Arjun Singh Dhurwey  
 3. Mahaboob Subhani  
 4. Zia Mohiuddin Dagar

Question ID : 264330115859  
Status : Not Answered  
Chosen Option : --

Q.16 The following duty 'A parent or guardian to provide opportunities for education to his child or his ward' was added to the Fundamental Duties by which Constitutional Amendment Act?

- Ans  1. 85th  
 2. 84th  
 3. 86th  
 4. 83rd

Question ID : 264330115633  
Status : Answered  
Chosen Option : 3

Q.17 Exports in excess of imports result in trade \_\_\_\_\_.

- Ans  1. surplus  
 2. deficit  
 3. zero budget  
 4. liability

Question ID : 264330115391  
Status : Answered  
Chosen Option : 1

Q.18 What is the name given to the path along the Pacific Ocean characterized by active volcanoes and frequent earthquakes?

- Ans
- 1. Ring of Fire
  - 2. Cape Horn
  - 3. Bermuda Triangle
  - 4. Drake Passage

Question ID : 264330115998  
Status : Answered  
Chosen Option : 3

Q.19 Who was Draupadi Murmu's opponent in the 2022 presidential elections?

- Ans
- 1. Mallikarjun Kharge
  - 2. Pranab Mukherjee
  - 3. Yashwant Sinha
  - 4. Shashi Tharoor

Question ID : 264330115018  
Status : Answered  
Chosen Option : 1

Q.20 Which of the following Indian states shares a boundary with both Bangladesh and Myanmar?

- Ans
- 1. Assam
  - 2. Manipur
  - 3. Mizoram
  - 4. Nagaland

Question ID : 264330116097  
Status : Answered  
Chosen Option : 1

Section : Part-C-Elementary Mathematics

Q.1 A boat can travel at a speed of 30 km/h in still water. If the flow of the stream is 2 km/h. How long will it take by the boat to travel 56 km upstream?

- Ans
- 1. 28 hours
  - 2. 3 hours
  - 3. 2 hours
  - 4.  $\frac{28}{15}$  hours

Question ID : 26433071337  
Status : Answered  
Chosen Option : 3

**Q.2** A tradesman marked the price of his goods to earn a profit of 20% after giving a discount of 20%. Marked price is how much percentage more than the cost price?

- Ans
- 1. 35%
  - 2. 40%
  - 3. 50%
  - 4. 20%

Question ID : 26433080240  
Status : Answered  
Chosen Option : 3

**Q.3** The traffic lights at two different road crossings change after every 54 sec and 76 sec, respectively. If they change simultaneously at 10:15:00 hours, then find the time at which they will change again simultaneously.

- Ans
- 1. 10:34:12 hours
  - 2. 10:59:12 hours
  - 3. 10:52:34 hours
  - 4. 10:49:12 hours

Question ID : 26433082604  
Status : Not Answered  
Chosen Option : --

**Q.4** In a class there are 80 students. Average weight of girls is 40 kg and average weight of boys is 50 kg. If number of boys is 50, then what will be the average weight of class?

- Ans
- 1. 46.25 kg.
  - 2. 45.5 kg
  - 3. 47.75 kg
  - 4. 48.25 kg

Question ID : 26433082495  
Status : Answered  
Chosen Option : 4

**Q.5** P, Q, and R working separately can do a piece of work in 50, 100, and 300 days respectively. If they work on alternate days, P works on the first day, Q works on the second day, R works on the third day and then again P works on the fourth day and so on, then in how many days, the work will be completed?

- Ans
- 1. 40 days
  - 2. 50 days
  - 3. 90 days
  - 4. 60 days

Question ID : 264330116889  
Status : Answered  
Chosen Option : 3

Q.6 R can complete a painting task in 12 days. With the help of two helpers, he can complete it in 8 days. In how many days the task will be completed by a helper alone?

- Ans
- 1. 24
  - 2. 48
  - 3. 42
  - 4. 36

Question ID : 26433066180  
Status : Answered  
Chosen Option : 2

Q.7 If the difference between the simple interest and the compound interest, compounding annually on a certain sum borrowed for 2 years at 8% per annum is ₹512, then find the sum borrowed (in ₹).

- Ans
- 1. ₹62,100
  - 2. ₹2,100
  - 3. ₹1,200
  - 4. ₹80,000

Question ID : 26433079953  
Status : Answered  
Chosen Option : 4

Q.8 The population of a village is 68000. It increases at the rate of 5 percent in the first year and decreases at the rate of 10 percent per annum for the next 2 years. What will be the population of the village after 3 years?

- Ans
- 1. 60832
  - 2. 56840
  - 3. 62823
  - 4. 57834

Question ID : 26433079882  
Status : Answered  
Chosen Option : 1

Q.9 John's and Tanvi's ages are in the ratio 8:15. After 9 years, the ratio of their ages will be 11:18. What is the difference (in years) between their ages?

- Ans
- 1. 45 years
  - 2. 7 years
  - 3. 21 years
  - 4. 24 years

Question ID : 26433073127  
Status : Answered  
Chosen Option : 2

**Q.10** The greatest 4-digit number divisible by 36 and 45 is subtracted from 10,000. Find the result.

- Ans  1. 150  
 2. 100  
 3. 180  
 4. 120

Question ID : 264330116644  
Status : Answered  
Chosen Option : 2

**Q.11** What is the mean proportional between 121 and 169?

- Ans  1. 143  
 2. 157  
 3. 153  
 4. 147

Question ID : 26433075664  
Status : Not Answered  
Chosen Option : --

**Q.12** A dealer buys 50 chairs for ₹50,000, but 20 of them are damaged. He decides to sell each of the damaged chairs at  $\frac{3}{4}$  the price of the normal one. What should this normal price be in order that he can make a profit of 35% in the entire transaction?

- Ans  1. Rs.6,750  
 2. Rs.5,000  
 3. Rs.1,125  
 4. Rs.1,500

Question ID : 26433073124  
Status : Answered  
Chosen Option : 1

**Q.13** When 40 is subtracted from 40 percent of a number the remainder is 40. Find the number.

- Ans  1. 200  
 2. 100  
 3. 300  
 4. 150

Question ID : 26433079856  
Status : Answered  
Chosen Option : 1



Q.14 The difference between the 110% of a number and 94.5% of the same number is 34.1. What is the original number?

- Ans
- 1. 190
  - 2. 110
  - 3. 220
  - 4. 134

Question ID : 264330116809  
Status : Not Answered  
Chosen Option : --

Q.15 The successive discounts of 10%, 30% and 25% is equivalent to a single discount of \_\_\_\_\_ (correct to a nearest whole number).

- Ans
- 1. 65%
  - 2. 47%
  - 3. 55%
  - 4. 53%

Question ID : 26433083040  
Status : Answered  
Chosen Option : 2

Q.16 There are 45 boxes which have an average weight of 52 g. Some boxes are blue, while others are green. If five blue boxes having average weight of 40 g, and eight green boxes having average weight of 43 g, are added, then what is the average weight (in g) now?

- Ans
- 1. 49.72
  - 2. 51.25
  - 3. 52.5
  - 4. 52.25

Question ID : 26433081637  
Status : Not Answered  
Chosen Option : --

Q.17 A heap of wheat is in the form of a cone of diameter 30 m and height 8 m. How much canvas cloth will be required to just cover the heap (take  $\pi = 3.14$ )?

- Ans
- 1.  $700.8 \text{ m}^2$
  - 2.  $800.7 \text{ m}^2$
  - 3.  $900.9 \text{ m}^2$
  - 4.  $900.8 \text{ m}^2$

Question ID : 26433075522  
Status : Not Answered  
Chosen Option : --

Q.18 In a shop, applied a bill for ₹1,00,000. The difference between a discount of 30% and two successive discounts of 25% and 5% is:

- Ans
- 1. ₹1,025
  - 2. ₹1,520
  - 3. ₹1,250
  - 4. ₹1,205

Question ID : 26433082791  
Status : Not Answered  
Chosen Option : --

Q.19 What is the volume of a hemisphere with radius 2.8 cm? (Use  $\pi = \frac{22}{7}$ ) (Rounded up to three places of decimal).

- Ans
- 1. 41 cm<sup>3</sup>
  - 2. 45.995 cm<sup>3</sup>
  - 3. 28 cm<sup>3</sup>
  - 4. 38.268 cm<sup>3</sup>

Question ID : 26433075174  
Status : Answered  
Chosen Option : 3

Q.20 Speed of a boat in still water is 8 km/h and the speed of the stream is 2 km/h. A man rows to a place at 90 km and comes back to the starting point. What is the total time taken by him in the given two-way movement?

- Ans
- 1. 30 hours
  - 2. 24 hours
  - 3. 21 hours
  - 4. 20 hours

Question ID : 26433076234  
Status : Answered  
Chosen Option : 2

Section : Part-D-English

Q.1 Select the most appropriate ANTONYM of the given word.

Dismal

- Ans
- 1. Frantic
  - 2. Candid
  - 3. Horrible
  - 4. Intelligent

Question ID : 26433073988  
Status : Answered  
Chosen Option : 3

Q.2 Select the most appropriate ANTONYM of the underlined word to fill in the blank.

The people of that remote island, who were considered savage by many were actually \_\_\_\_\_ islanders.

- Ans
- 1. efficient
  - 2. civilised
  - 3. mobilised
  - 4. organised

Question ID : 26433091846  
Status : Answered  
Chosen Option : 4

Q.3 Select the most appropriate synonym for the underlined word in the given sentence.

Those unwilling to capitulate to the new Chancellor's demands will be ruthlessly fired.

- Ans
- 1. believe
  - 2. listen
  - 3. torture
  - 4. surrender

Question ID : 26433073750  
Status : Answered  
Chosen Option : 3

Q.4 Select the most appropriate synonym of the given word.

Frantic

- Ans
- 1. Violent
  - 2. Gentle
  - 3. Lazy
  - 4. Loyal

Question ID : 26433074047  
Status : Answered  
Chosen Option : 1

Q.5 Select the most appropriate ANTONYM of the given word.

Silent

- Ans
- 1. Utterable
  - 2. Noisy
  - 3. Mum
  - 4. Mute

Question ID : 26433072810  
Status : Answered  
Chosen Option : 2

**Q.6** A part of the given sentence which has been underlined may contain a spelling error. Select the option that correctly rectifies the spelling error. If there is no error, select 'No error'.

The doctor prescribed to put the patient in quarrantine for a few days.

- Ans
- 1. Qurantine
  - 2. Quarantnine
  - 3. Quarantine
  - 4. No error

Question ID : 26433071789  
Status : Answered  
Chosen Option : 4

**Q.7** Select the option that contains a grammatical error in the underlined portion.

I had take a vow of celibacy which was a part of my training while I was in the temple.

- Ans
- 1. I had take a vow of celibacy which was a part of my training while I was in the temple.
  - 2. I had take a vow of celibacy which was a part of my training while I was in the temple.
  - 3. I had take a vow of celibacy which was a part of my training while I was in the temple.
  - 4. I had take a vow of celibacy which was a part of my training while I was in the temple.

Question ID : 26433088593  
Status : Answered  
Chosen Option : 1

**Q.8** Select the most appropriate meaning of the underlined idiom in the given sentence.

He had to bite the bullet when the doctor told him that his injured foot had to be amputated.

- Ans
- 1. Refuse to do something
  - 2. Expedite the procedure
  - 3. Commit suicide
  - 4. To accept a difficult or unpleasant situation

Question ID : 26433072089  
Status : Not Answered  
Chosen Option : --

**Q.9** Select the INCORRECTLY spelt word.

- Ans
- 1. Fantastic
  - 2. Mirror
  - 3. Secretly
  - 4. Alaign

Question ID : 26433085206  
Status : Answered  
Chosen Option : 4

Q.10 Select the most appropriate option to fill in the blank.

I was looking forward to a \_\_\_\_\_ evening at home.

- Ans
- 1. quit
  - 2. quiet
  - 3. quite
  - 4. quote

Question ID : 26433088235  
Status : Answered  
Chosen Option : 2

Q.11 Select the most appropriate meaning of the given idiom.

A slap on the wrist

- Ans
- 1. A wrist watch
  - 2. A secret alliance
  - 3. A tiny gift
  - 4. A small punishment

Question ID : 26433073476  
Status : Not Answered  
Chosen Option : --

Q.12 Select the most appropriate option to fill in the blank.

The audience was asked to dress \_\_\_\_\_, since it was a formal occasion at the Royal Palace.

- Ans
- 1. informally
  - 2. appropriately
  - 3. gaudily
  - 4. casually

Question ID : 26433085596  
Status : Not Answered  
Chosen Option : --

Q.13 Choose the option that can substitute the underlined segment correctly and complete the meaning of the sentence.

Our possessions and other items, while travelling to Europe last year, was misplaced by the travelling agency.

- Ans
- 1. Goods
  - 2. Cases
  - 3. Luggage
  - 4. Kit

Question ID : 26433088881  
Status : Not Answered  
Chosen Option : --

Q.14 Select the most appropriate option to substitute the underlined segment in the given sentence. If no substitution is required, select 'No substitution'.

Do you have to stay home last week?

- Ans  1. Have you had  
 2. Did you have  
 3. No substitution  
 4. Does you have

Question ID : 26433099060  
Status : Not Answered  
Chosen Option : --

Q.15 Select the most appropriate synonym of the word given in brackets to fill in the blank.

A real warrior does not \_\_\_\_\_ (surrender) to his enemies.

- Ans  1. expose  
 2. yield  
 3. smile  
 4. cooperate

Question ID : 26433070467  
Status : Not Answered  
Chosen Option : --

**Comprehension:**

In the following passage, some words have been deleted. Read the passage carefully and select the most appropriate option to fill in each blank.

A flood occurs when water overflows its natural (1) \_\_\_\_\_ and lands on typically dry ground. Floods have always been an (2) \_\_\_\_\_ component of life on the planet. A legend about a (3) \_\_\_\_\_ flood exists in almost every civilisation. Many people have (4) \_\_\_\_\_ to live near bodies of water in order to have access to transportation routes, fishing, and water for drinking, farming, and industry. The majority of the world's major cities are (5) \_\_\_\_\_ on or near oceans, lakes, or rivers.

SubQuestion No : 16

Q.16 Select the most appropriate option to fill in blank number 1.

- Ans  1. volumes  
 2. streams  
 3. barriers  
 4. currents

Question ID : 26433088521  
Status : Not Answered  
Chosen Option : --

**Comprehension:**

In the following passage, some words have been deleted. Read the passage carefully and select the most appropriate option to fill in each blank.

A flood occurs when water overflows its natural (1) \_\_\_\_\_ and lands on typically dry ground. Floods have always been an (2) \_\_\_\_\_ component of life on the planet. A legend about a (3) \_\_\_\_\_ flood exists in almost every civilisation. Many people have (4) \_\_\_\_\_ to live near bodies of water in order to have access to transportation routes, fishing, and water for drinking, farming, and industry. The majority of the world's major cities are (5) \_\_\_\_\_ on or near oceans, lakes, or rivers.

**SubQuestion No : 17**

**Q.17 Select the most appropriate option to fill in blank number 2.**

- Ans  1. evitable  
 2. unavoidable  
 3. amendable  
 4. accessible

Question ID : 26433088522  
Status : Not Answered  
Chosen Option : --

**Comprehension:**

In the following passage, some words have been deleted. Read the passage carefully and select the most appropriate option to fill in each blank.

A flood occurs when water overflows its natural (1) \_\_\_\_\_ and lands on typically dry ground. Floods have always been an (2) \_\_\_\_\_ component of life on the planet. A legend about a (3) \_\_\_\_\_ flood exists in almost every civilisation. Many people have (4) \_\_\_\_\_ to live near bodies of water in order to have access to transportation routes, fishing, and water for drinking, farming, and industry. The majority of the world's major cities are (5) \_\_\_\_\_ on or near oceans, lakes, or rivers.

**SubQuestion No : 18**

**Q.18 Select the most appropriate option to fill in blank number 3.**

- Ans  1. limit  
 2. huge  
 3. induced  
 4. controlled

Question ID : 26433088523  
Status : Not Answered  
Chosen Option : --

**Comprehension:**

In the following passage, some words have been deleted. Read the passage carefully and select the most appropriate option to fill in each blank.

A flood occurs when water overflows its natural (1) \_\_\_\_\_ and lands on typically dry ground. Floods have always been an (2) \_\_\_\_\_ component of life on the planet. A legend about a (3) \_\_\_\_\_ flood exists in almost every civilisation. Many people have (4) \_\_\_\_\_ to live near bodies of water in order to have access to transportation routes, fishing, and water for drinking, farming, and industry. The majority of the world's major cities are (5) \_\_\_\_\_ on or near oceans, lakes, or rivers.

**SubQuestion No : 19**

**Q.19 Select the most appropriate option to fill in blank number 4.**

- Ans  1. avoided  
 2. chosen  
 3. conquered  
 4. left

Question ID : 26433088524

Status : Not Answered

Chosen Option : --

**Comprehension:**

In the following passage, some words have been deleted. Read the passage carefully and select the most appropriate option to fill in each blank.

A flood occurs when water overflows its natural (1) \_\_\_\_\_ and lands on typically dry ground. Floods have always been an (2) \_\_\_\_\_ component of life on the planet. A legend about a (3) \_\_\_\_\_ flood exists in almost every civilisation. Many people have (4) \_\_\_\_\_ to live near bodies of water in order to have access to transportation routes, fishing, and water for drinking, farming, and industry. The majority of the world's major cities are (5) \_\_\_\_\_ on or near oceans, lakes, or rivers.

**SubQuestion No : 20**

**Q.20 Select the most appropriate option to fill in blank number 5.**

- Ans  1. endangered  
 2. confiscated  
 3. located  
 4. banned

Question ID : 26433088525

Status : Not Answered

Chosen Option : --

Section : Part-D-Hindi

**Q.1 निम्नलिखित विकल्पों में से 'नवीन बनाने की क्रिया' वाक्यांश के लिए एक सार्थक शब्द क्या होगा?**

- Ans  1. आर्थिक  
 2. सर्वमत  
 3. परम्परावादी  
 4. आधुनिकीकरण

Question ID : 26433062470

Status : Not Answered

Chosen Option : --



Q.2 शालीन व्यक्ति का समाज में हमेशा सम्मान होता है और \_\_\_\_\_ का अपमान।  
'शालीन' के विलोम शब्द से उपरोक्त वाक्य में रिक्त स्थान की पूर्ति कीजिए।

- Ans
- 1. धृष्ट
  - 2. वृद्ध
  - 3. सुकुमार
  - 4. सौम्य

Question ID : 26433080871  
Status : Not Answered  
Chosen Option : --

Q.3 निम्न वाक्यांश के लिए एक शब्द क्या होगा?  
जो किये हुए उपकार को मानता है

- Ans
- 1. कृतज्ञ
  - 2. कृतकृत्य
  - 3. कृतघ्न
  - 4. कृतार्थ

Question ID : 26433070099  
Status : Not Answered  
Chosen Option : --

Q.4 कौन से विकल्प में दिए गए सभी शब्द रीतिवाचक क्रिया विशेषण के उदाहरण हैं?

- Ans
- 1. आज, आजकल, प्रतिदिन
  - 2. केवल, कदाचित, शायद
  - 3. ऊपर, नीचे, बाहर
  - 4. ज्योंही, तक, पर

Question ID : 26433063051  
Status : Not Answered  
Chosen Option : --

Q.5 'कान काटना' मुहावरे का सही अर्थ है-

- Ans
- 1. चालाकी में आगे होना
  - 2. किसी की चुगली करना
  - 3. आसानी से कहने में आ जाना
  - 4. झूठ बोलना

Question ID : 26433065925  
Status : Not Answered  
Chosen Option : --

Q.6 निम्नलिखित मुहावरे का उपयुक्त अर्थ क्या होगा?  
चट कर जाना

- Ans
- 1. सो जाना
  - 2. मर जाना
  - 3. घूस लेना
  - 4. खा जाना

Question ID : 26433065767  
Status : Not Answered  
Chosen Option : --

Q.7 निम्नलिखित वाक्य में रेखांकित खंड के स्थान पर प्रयुक्त होने वाले सबसे उपयुक्त विकल्प का चयन कीजिए।  
प्लेट में अंगूर का झुंडु रखा है।

- Ans
- 1. छल्ला
  - 2. समूह
  - 3. दल
  - 4. गुच्छा

Question ID : 26433079566  
Status : Not Answered  
Chosen Option : --

Q.8 मैंने गुलाब का पुष्प मँगाया था पर तुम कमल के \_\_\_\_\_ ले के आए।  
'फूल' के पर्याय से उपरोक्त वाक्य में रिक्त स्थान की पूर्ति करें।

- Ans
- 1. पुन्डरिक
  - 2. सुमन
  - 3. वारिद
  - 4. कुमुद

Question ID : 26433084985  
Status : Not Answered  
Chosen Option : --

Q.9 निम्न वाक्यांश के लिए सार्थक शब्द/सही विकल्प चुनें।  
जिसकी कोई सीमा न हो

- Ans
- 1. सीमांत
  - 2. ससीम
  - 3. असीम
  - 4. सीमित

Question ID : 26433066930  
Status : Not Answered  
Chosen Option : --

Q.10 'पांच टन कोयले।' इस वाक्य में रेखांकित शब्द के स्थान पर उचित शब्द क्या होगा?

- Ans
- 1. कोयलों
  - 2. कोयल
  - 3. कोयला सा
  - 4. कोयला

Question ID : 26433062784  
Status : Not Answered  
Chosen Option : --

Q.11 'सोहन की व्यवहार अच्छा नहीं है।' इस वाक्य में अशुद्धि पहचानिए।

- Ans
- 1. की
  - 2. नहीं
  - 3. है
  - 4. अच्छा

Question ID : 26433091306  
Status : Not Answered  
Chosen Option : --

Q.12 क्रिया-विशेषण के प्रकार और उनके उदाहरण का निम्न में से कौन सा युग्म सही नहीं है?

- Ans
- 1. निश्चयबोधक क्रिया विशेषण - बेशक
  - 2. समयवाचक क्रिया विशेषण - पीछे
  - 3. स्थितिबोधक क्रिया विशेषण - कहीं न कहीं
  - 4. परिमाणवाचक क्रिया विशेषण - सर्वत्र

Question ID : 26433079230  
Status : Not Answered  
Chosen Option : --

Q.13 निम्न में से किस वाक्य में 'सुकुमार' के सही पर्यायवाची शब्द का प्रयोग हुआ है?

- Ans
- 1. वह छोटा बालक है।
  - 2. रमेश बहुत भोला है।
  - 3. पुष्प अत्यंत कोमल होते हैं।
  - 4. यौवन चिरकाल नहीं रहता।

Question ID : 26433085146  
Status : Not Answered  
Chosen Option : --

Q.14 निम्नलिखित वाक्यों में से शुद्ध वाक्य का चयन कीजिए।

- Ans
- 1. निराशा का उजाला छाया हुआ है।
  - 2. निराशा का प्रकाश छाया हुआ है।
  - 3. निराशा की किरण छाई हुई है।
  - 4. निराशा के बादल छाये हुए हैं।

Question ID : 26433062825  
Status : Not Answered  
Chosen Option : --

Q.15 शिवजी का वह मंदिर जंगल में बहुत दुर्गम स्थान पर है।' वाक्य में प्रयुक्त 'दुर्गम' शब्द का अर्थ है-

- Ans  1. जहाँ पहुँचना कठिन हो  
 2. जहाँ का रास्ता अच्छा हो  
 3. जहाँ पहुँचना संभव हो  
 4. जहाँ जाना अच्छा लगता हो

Question ID : 26433069733

Status : Not Answered

Chosen Option : --

**Comprehension:**

निम्नलिखित गद्यांश में कुछ शब्दों को हटा दिया गया है। दिए गए विकल्पों की सहायता से रिक्त स्थानों की पूर्ति कीजिए। प्रत्येक संख्या के लिए सबसे उपयुक्त विकल्प का चयन कीजिए।  
पर्यटन या देशाटन एक ही अर्थवाची 1. \_\_\_\_\_ हैं। इसका शाब्दिक अर्थ है- देश-विदेश में 2. \_\_\_\_\_ करना। एक स्थान पर रहते-रहते मनुष्य ऊब जाता है। वह कहीं 3. \_\_\_\_\_ जाना चाहता है। मनुष्य में जिज्ञासा वृत्ति होती है, जो उसे अपने देश के विषय में ही नहीं, 4. \_\_\_\_\_ के बारे में भी जानने की प्रेरणा देती है। वह नई वस्तुओं को जानना चाहता है, उनके सौंदर्य को 5. \_\_\_\_\_ चाहता है।

**SubQuestion No : 16**

Q.16 रिक्त स्थान 1 की पूर्ति के लिए सबसे उपयुक्त विकल्प का चयन कीजिए।

- Ans  1. ज्ञान  
 2. वस्तु  
 3. शब्द  
 4. विकास

Question ID : 264330111059

Status : Not Answered

Chosen Option : --

**Comprehension:**

निम्नलिखित गद्यांश में कुछ शब्दों को हटा दिया गया है। दिए गए विकल्पों की सहायता से रिक्त स्थानों की पूर्ति कीजिए। प्रत्येक संख्या के लिए सबसे उपयुक्त विकल्प का चयन कीजिए।  
पर्यटन या देशाटन एक ही अर्थवाची 1. \_\_\_\_\_ हैं। इसका शाब्दिक अर्थ है- देश-विदेश में 2. \_\_\_\_\_ करना। एक स्थान पर रहते-रहते मनुष्य ऊब जाता है। वह कहीं 3. \_\_\_\_\_ जाना चाहता है। मनुष्य में जिज्ञासा वृत्ति होती है, जो उसे अपने देश के विषय में ही नहीं, 4. \_\_\_\_\_ के बारे में भी जानने की प्रेरणा देती है। वह नई वस्तुओं को जानना चाहता है, उनके सौंदर्य को 5. \_\_\_\_\_ चाहता है।

**SubQuestion No : 17**

Q.17 रिक्त स्थान 2 की पूर्ति के लिए सबसे उपयुक्त विकल्प का चयन कीजिए।

- Ans  1. निकल  
 2. आश्चर्य  
 3. मैत्री  
 4. भ्रमण

Question ID : 264330111060

Status : Not Answered

Chosen Option : --

**Comprehension:**

निम्नलिखित गद्यांश में कुछ शब्दों को हटा दिया गया है। दिए गए विकल्पों की सहायता से रिक्त स्थानों की पूर्ति कीजिए। प्रत्येक संख्या के लिए सबसे उपयुक्त विकल्प का चयन कीजिए।  
पर्यटन या देशाटन एक ही अर्थवाची 1. \_\_\_\_\_ है। इसका शाब्दिक अर्थ है- देश-विदेश में 2. \_\_\_\_\_ करना। एक स्थान पर रहते-रहते मनुष्य ऊब जाता है। वह कहीं 3. \_\_\_\_\_ जाना चाहता है। मनुष्य में जिज्ञासा वृत्ति होती है, जो उसे अपने देश के विषय में ही नहीं, 4. \_\_\_\_\_ के बारे में भी जानने की प्रेरणा देती है। वह नई वस्तुओं को जानना चाहता है, उनके सौंदर्य को 5. \_\_\_\_\_ चाहता है।

**SubQuestion No : 18**

Q.18 रिक्त स्थान 3 की पूर्ति के लिए सबसे उपयुक्त विकल्प का चयन कीजिए।

- Ans
- 1. पढ़ने
  - 2. घूमने
  - 3. स्थानों
  - 4. देखने

Question ID : 264330111061

Status : Not Answered

Chosen Option : --

**Comprehension:**

निम्नलिखित गद्यांश में कुछ शब्दों को हटा दिया गया है। दिए गए विकल्पों की सहायता से रिक्त स्थानों की पूर्ति कीजिए। प्रत्येक संख्या के लिए सबसे उपयुक्त विकल्प का चयन कीजिए।  
पर्यटन या देशाटन एक ही अर्थवाची 1. \_\_\_\_\_ हैं। इसका शाब्दिक अर्थ है- देश-विदेश में 2. \_\_\_\_\_ करना। एक स्थान पर रहते-रहते मनुष्य ऊब जाता है। वह कहीं 3. \_\_\_\_\_ जाना चाहता है। मनुष्य में जिज्ञासा वृत्ति होती है, जो उसे अपने देश के विषय में ही नहीं, 4. \_\_\_\_\_ के बारे में भी जानने की प्रेरणा देती है। वह नई वस्तुओं को जानना चाहता है, उनके सौंदर्य को 5. \_\_\_\_\_ चाहता है।

**SubQuestion No : 19**

Q.19 रिक्त स्थान 4 की पूर्ति के लिए सबसे उपयुक्त विकल्प का चयन कीजिए।

- Ans
- 1. विदेश
  - 2. यात्राओं
  - 3. राष्ट्र
  - 4. दूर

Question ID : 264330111062

Status : Not Answered

Chosen Option : --

**Comprehension:**

निम्नलिखित गद्यांश में कुछ शब्दों को हटा दिया गया है। दिए गए विकल्पों की सहायता से रिक्त स्थानों की पूर्ति कीजिए। प्रत्येक संख्या के लिए सबसे उपयुक्त विकल्प का चयन कीजिए।  
पर्यटन या देशाटन एक ही अर्थवाची 1. \_\_\_\_\_ है। इसका शाब्दिक अर्थ है- देश-विदेश में 2. \_\_\_\_\_ करना। एक स्थान पर रहते-रहते मनुष्य ऊब जाता है। वह कहीं 3. \_\_\_\_\_ जाना चाहता है। मनुष्य में जिज्ञासा वृत्ति होती है, जो उसे अपने देश के विषय में ही नहीं, 4. \_\_\_\_\_ के बारे में भी जानने की प्रेरणा देती है। वह नई वस्तुओं को जानना चाहता है, उनके सौंदर्य को 5. \_\_\_\_\_ चाहता है।

**SubQuestion No : 20**

**Q.20** रिक्त स्थान 5 की पूर्ति के लिए सबसे उपयुक्त विकल्प का चयन कीजिए।

- Ans**  1. निहारना  
 2. भेजना  
 3. पखारना  
 4. लाभ

Question ID : 264330111063

Status : Not Answered

Chosen Option : --

KD Job Updates

# Constable GD in CAPFs SSF Rifleman GD in Assam Rifles and Sepoy in NCB Examination 2022

Roll Number	KD Job Updates
Candidate Name	KD Job Updates
Venue Name	iON Digital Zone iDZ 1 Sector 62
Exam Date	09/02/2023
Exam Time	2:30 PM - 3:30 PM
Subject	Constable GD Examination 2022

## Section : Part-A-General Intelligence and Reasoning

Q.1 Which of the following numbers will replace the question mark (?) in the given series?  
10, 20, 11, 22, 14, 26, 19, 32, ?

Ans  1. 26

2. 29

3. 28

4. 32

Question ID : 26433069047

Status : Answered

Chosen Option : 1

Q.2 Three statements are given followed by three conclusions. Assuming the statements to be true, even if they seem to be at variance with commonly known facts, decide which of the conclusions logically follow(s) from the statements.

Statements:

All blacks are blues.

All blues are pinks.

No pink is a green.

Conclusions:

1. All greens can be blues.

2. Some pinks are blacks.

3. All blacks are greens.

Ans  1. Only conclusion 1 follows.

2. All conclusions follow.

3. Only conclusion 2 follows.

4. Only conclusions 1 and 2 follow.

Question ID : 26433089421

Status : Answered

Chosen Option : 3

Q.3 If '+' means '-', '-' means '+', '÷' means 'x', and 'x' means '÷'. Which of the following will be the value of the expression?  
 $125 - 25 \div 3 + 14 \times 36$

- Ans
- 1. 43
  - 2. 48
  - 3. 37
  - 4. 35

Question ID : 264330114181  
Status : Answered  
Chosen Option : 3

Q.4 Which two signs should be interchanged to make the below equation mathematically correct?  
 $40 + 14 \div 35 - 30 \times 15 = 1$

- Ans
- 1. + and ÷
  - 2. + and x
  - 3. - and +
  - 4. ÷ and -

Question ID : 264330117510  
Status : Answered  
Chosen Option : 2

Q.5 Which option represents the correct order of the given words as they would appear in the English dictionary?

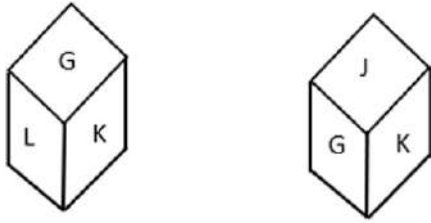
1. Stool
2. Store
3. Stair
4. Strong
5. Stream

- Ans
- 1. 3,1,4,2,5
  - 2. 3,1,2,5,4
  - 3. 3,2,1,5,4
  - 4. 3,1,5,4,2

Question ID : 26433069269  
Status : Answered  
Chosen Option : 2




**Q.6** Two different positions of the same dice are shown having alphabets 'G' to 'L'. Find the alphabet on the face opposite the face showing 'L'.



- Ans
- 1. H
  - 2. K
  - 3. I
  - 4. J

Question ID : 26433085510  
 Status : Answered  
 Chosen Option : 4

**Q.7** Select the figure that will come next in the following figure series.



Ans

- 1.
- 2.
- 3.
- 4.

Question ID : 26433076493  
 Status : Answered  
 Chosen Option : 4

Q.8 Which of the following numbers will replace the question mark (?) in the given series?  
6, 8, 13, 15, 27, 29, 55, 57, ?

- Ans  1. 111  
 2. 101  
 3. 102  
 4. 110

Question ID : 26433069117  
Status : Answered  
Chosen Option : 1

Q.9 Select the option that is related to the fifth number in the same way as the second number is related to the first number and the fourth number is related to the third number.

9 : 3 :: 243 : 9 :: 6561 : ?

- Ans  1. 81  
 2. 17  
 3. 27  
 4. 12

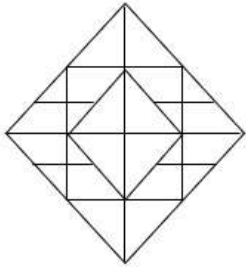
Question ID : 26433069415  
Status : Answered  
Chosen Option : 1

Q.10 A @ B means 'A is the mother-in-law of B'.  
A & B means 'A is the mother of B'.  
A # B means 'A is the husband of B'.  
A % B means 'A is the brother of B'.  
If G @ V # K & C % M, then how is G related to M?

- Ans  1. Maternal grandmother  
 2. Mother's sister  
 3. Great-grandmother  
 4. Mother

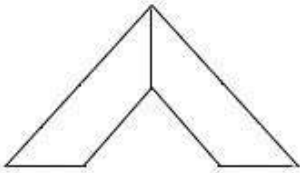
Question ID : 26433069619  
Status : Answered  
Chosen Option : 1

Q.11 Select the option figure which is embedded in the given figure. (Rotation is NOT allowed)

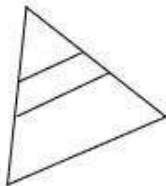


Ans

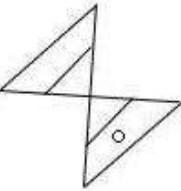
✓ 1.



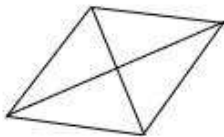
✗ 2.



✗ 3.



✗ 4.



Question ID : 26433069354

Status : Answered

Chosen Option : 1

Q.12 In a certain code language, 'BABY' is written as '20' and 'ADULTS' is written as '30'. How will 'WOMAN' be written in that language?

Ans ✓ 1. 25

✗ 2. 20

✗ 3. 35

✗ 4. 30

Question ID : 26433069551

Status : Answered

Chosen Option : 1

Q.13 Which of the following letters will replace the question mark (?) and complete the following letter series?  
S, N, G, V, I, ?

- Ans  1. R  
 2. Q  
 3. S  
 4. T

Question ID : 26433067283  
Status : Not Answered  
Chosen Option : --

Q.14 Six people J, K, L, M, N and O are sitting around a circular table, facing the centre. M is the immediate neighbour of O and J. J is sitting second to the right of K. L is sitting second to the right of N. Who is sitting between L and N when considered from the right of N?

- Ans  1. O  
 2. J  
 3. M  
 4. K

Question ID : 26433081518  
Status : Answered  
Chosen Option : 4

Q.15 Select the option that is related to the third word in the same way as the second word is related to the first word (The words must be considered as meaningful English words and must not be related to each other based on the number of letters/consonants/vowels in the word).  
Germ : Disease :: War : \_\_\_\_\_

- Ans  1. Destruction  
 2. Bomb  
 3. Country  
 4. Gun

Question ID : 26433078828  
Status : Answered  
Chosen Option : 1

Q.16 Select the letter-cluster from among the given options that can replace the question mark (?) in the following series.  
UCZE, BXGL, ISNS, ?, WIBG

- Ans  1. FMVT  
 2. PBNW  
 3. FQNR  
 4. PNUZ

Question ID : 26433074738  
Status : Not Answered  
Chosen Option : --

Q.17 In a certain language, ABROAD is written as RBAOAD, ACCEPT is written as CCAEPT. How will ACTIVE be written in the same language?

- Ans
- 1. ZXGREV
  - 2. TCAIVE
  - 3. TCAEVI
  - 4. EVITCA

Question ID : 26433074588  
Status : Answered  
Chosen Option : 2

Q.18 Select the option that is related to the third word in the same way as the second word is related to the first word. (The words must be considered as meaningful English words and must not be related to each other based on the number of letters/number of consonants/vowels in the word.)

Musicians : Band :: Soldier : ?

- Ans
- 1. War
  - 2. Police
  - 3. Army
  - 4. Border

Question ID : 26433067368  
Status : Answered  
Chosen Option : 3

Q.19 Select the correct mirror image of the given figure when the mirror is placed at MN as shown below.

AnecDote

M  
|  
N

- Ans
- 1. AnEcDote
  - 2. AnecDote
  - 3. AnEcDote
  - 4. AnecDote

Question ID : 26433085559  
Status : Answered  
Chosen Option : 4

Q.20 Five people P, Q, R, S and T are seated in a straight row, all facing the north. Exactly three people are seated to the right of S. P and Q are not occupying any end seats. T is seated third to the left of Q. Where is R sitting?

- Ans
- 1. Second to the left of S
  - 2. Immediate right of Q
  - 3. Immediate left of Q
  - 4. Second to the left of T

Question ID : 26433074525  
Status : Answered  
Chosen Option : 2

Section : Part-B-General Knowledge and General awareness

Q.1 Which of the following states is NOT associated with the classical dance form of Chhau?

- Ans
- 1. Odisha
  - 2. West Bengal
  - 3. Tamil Nadu
  - 4. Jharkhand

Question ID : 26433086709  
Status : Answered  
Chosen Option : 3

Q.2 The official motto of the 36th edition of the National Games 2022 of India was \_\_\_\_\_.

- Ans
- 1. Celebrating health through sports
  - 2. Celebrating secularism through sports
  - 3. Celebrating unity through sports
  - 4. Celebrating freedom through sports

Question ID : 264330115949  
Status : Not Answered  
Chosen Option : --

Q.3 Who among the following political leaders became the chief minister of Bihar, India in August 2022?

- Ans
- 1. Tejashwi Yadav
  - 2. Nitish Kumar
  - 3. Tarkishore Prasad
  - 4. Renu Devi

Question ID : 264330114900  
Status : Answered  
Chosen Option : 2

Q.4 If loan exposure is supported by collateral, it's said to be \_\_\_\_\_.

- Ans
- 1. poor credit
  - 2. unsecured credit
  - 3. high credit
  - 4. secured credit

Question ID : 264330115297  
Status : Answered  
Chosen Option : 2

Q.5 Deendayal Port, is a \_\_\_\_ port located in Kandla, Gujarat.

- Ans
- 1. new
  - 2. temporary
  - 3. tidal
  - 4. small

Question ID : 264330115544  
Status : Not Answered  
Chosen Option : --

Q.6 Statutory body of higher education, which was set up during the first five year plan in India,\_\_\_\_\_.

- Ans
- 1. National Council for Teacher Education
  - 2. Medical Council of India
  - 3. All India Council of Technical Education
  - 4. University Grants Commission

Question ID : 264330115366  
Status : Answered  
Chosen Option : 3

Q.7 The Governor of the state is appointed by the \_\_\_\_\_.

- Ans
- 1. Prime minister
  - 2. President
  - 3. Prime minister (on the advice of the central government)
  - 4. Chief Minister (on the advice of the central government)

Question ID : 26433086671  
Status : Answered  
Chosen Option : 2

Q.8 The north-west part of India receives rainfall in winter due to \_\_\_\_\_.

- Ans
- 1. the south-west monsoon
  - 2. the north-west monsoon
  - 3. western disturbance
  - 4. the retreating of the monsoon

Question ID : 26433089657  
Status : Answered  
Chosen Option : 3

**Q.9** The term "Juvenile" under Juvenile Justice (Care and Protection of Children) Act, 2015 refers to a person \_\_\_\_\_.

- Ans**
- 1. below 16 years of age
  - 2. below 18 years of age
  - 3. below 15 years of age
  - 4. below 12 years of age

Question ID : 264330116221  
Status : Not Answered  
Chosen Option : --

**Q.10** Srimanta Sankardeva received recognition for which dance form?

- Ans**
- 1. Mohiniyattam
  - 2. Kuchipudi
  - 3. Sattriya
  - 4. Creative dance

Question ID : 264330115875  
Status : Not Answered  
Chosen Option : --

**Q.11** Which among the following is incorrect pair of physical quantity and unit of measurement?

- Ans**
- 1. Power - Watt
  - 2. Pressure - Newton
  - 3. Frequency - Hertz
  - 4. Energy - Joule

Question ID : 264330115148  
Status : Answered  
Chosen Option : 2

**Q.12** Who among the following found it more difficult to follow the rules of Jainism?

- Ans**
- 1. Mahajans
  - 2. Artisans
  - 3. Traders
  - 4. Peasants

Question ID : 26433085211  
Status : Not Answered  
Chosen Option : --



Q.13 In which year was Swarnajayanti Gram Swarozgar Yojana launched in India?

- Ans  1. 2000  
 2. 1999  
 3. 2005  
 4. 2008

Question ID : 264330116075  
Status : Not Answered  
Chosen Option : --

Q.14 The term 'Mini Constitution' is used for which Constitutional Amendment Act of the Indian Constitution?

- Ans  1. 38<sup>th</sup>  
 2. 42<sup>nd</sup>  
 3. 40<sup>th</sup>  
 4. 44<sup>th</sup>

Question ID : 26433090661  
Status : Answered  
Chosen Option : 2

Q.15 Antyodaya Anna Yojana (AAY) was launched in which year?

- Ans  1. 1997  
 2. 2000  
 3. 1999  
 4. 1998

Question ID : 264330116155  
Status : Not Answered  
Chosen Option : --

Q.16 Humus, a dark colored amorphous substance is formed as a result of which process?

- Ans  1. fragmentation  
 2. leaching  
 3. humification  
 4. mineralisation

Question ID : 264330115251  
Status : Answered  
Chosen Option : 3

Q.17 Dhyan Chand was a legendary Player of which of the following sports?

- Ans  1. Cricket  
 2. Hockey  
 3. Tennis  
 4. Football

Question ID : 264330116289  
Status : Answered  
Chosen Option : 2

Q.18 In \_\_\_\_\_, Gandhiji held a Satyagraha at Ahmedabad to solve the dispute between the owners and workers of a cotton mill in the city.

- Ans
- 1. 1917
  - 2. 1916
  - 3. 1915
  - 4. 1918

Question ID : 264330106574  
Status : Not Answered  
Chosen Option : --

Q.19 The \_\_\_\_\_ edition of the Rajasthan International Folk Festival was organized from 6th to 10th October 2022.

- Ans
- 1. 12th
  - 2. 11th
  - 3. 13th
  - 4. 10th

Question ID : 264330115086  
Status : Not Answered  
Chosen Option : --

Q.20 Who replaced Sanjay Kumar Verma as the Indian Ambassador to Japan?

- Ans
- 1. Sibi George
  - 2. Gopal Baglay
  - 3. Sunil Arora
  - 4. Naveen Srivastava

Question ID : 264330115000  
Status : Not Answered  
Chosen Option : --

Section : Part-C-Elementary Mathematics

Q.1 Dev and Rohit can do a work in 12 and 36 days, respectively. Starting with Dev, they work on alternate days. When will the work be completed?

- Ans
- 1. 18 days
  - 2. 20 days
  - 3. 25 days
  - 4. 12 days

Question ID : 26433074942  
Status : Answered  
Chosen Option : 1

Q.2 If the number  $715^*42324$  is completely divisible by 3, then find the largest whole number in the place of \*,

- Ans
- 1. 3
  - 2. 2
  - 3. 8
  - 4. 5

Question ID : 26433079902  
Status : Answered  
Chosen Option : 2

Q.3 In a 5 km race, X, Y and Z, each running at a uniform speed, get the gold, silver, and bronze medals, respectively. If X beats Y by 0.5 km and Y beats Z by 0.5 km, then by how many metres does X beat Z?

- Ans
- 1. 960 m
  - 2. 975 m
  - 3. 950 m
  - 4. 1,000 m

Question ID : 26433076235  
Status : Answered  
Chosen Option : 4

Q.4 A new car costs Rs. 1280000. In the first year its value drops by 25 percent. What is it worth at the end of the first year?

- Ans
- 1. Rs. 1050000
  - 2. Rs. 960000
  - 3. Rs. 990000
  - 4. Rs. 850000

Question ID : 264330116825  
Status : Answered  
Chosen Option : 2

Q.5 Ashok bought a laptop for ₹60,000 and sold it for ₹72,000. What is the percentage profit on the sale of laptop?

- Ans
- 1. 25%
  - 2. 20%
  - 3. 30%
  - 4. 12%

Question ID : 26433082502  
Status : Answered  
Chosen Option : 2

Q.6 A shopkeeper claims to sell his articles at Rs.40 per kg which costs him Rs.50 per kg. But while selling he uses false weight and gives only 640 gm instead of 1 kg. What is his profit percentage?

- Ans
- 1. 15%
  - 2. 10%
  - 3. 25%
  - 4. 20%

Question ID : 26433076093  
Status : Not Answered  
Chosen Option : --

Q.7 Determine the fourth proportional to 125 m, 118 m, 88 m. (Consider up to two decimals)

- Ans
- 1. 83.07 m
  - 2. 89.07 m
  - 3. 73.07 m
  - 4. 79.07 m

Question ID : 26433081031  
Status : Not Answered  
Chosen Option : --

Q.8 If the sum of two numbers is 60 and the HCF and LCM of these numbers are 5 and 175 respectively, then the sum of the reciprocals of the numbers is:

- Ans
- 1.  $\frac{14}{120}$
  - 2.  $\frac{14}{175}$
  - 3.  $\frac{12}{175}$
  - 4.  $\frac{11}{120}$

Question ID : 26433082353  
Status : Not Answered  
Chosen Option : --

Q.9 In a race of 500 meters, Q can give a head start of 50 meters to P and R can give a head start of 100 meters to Q to complete the race at the same time. Find the head start that R can give to P to complete this race at the same time.

- Ans
- 1. 260 metres
  - 2. 160 metres
  - 3. 140 metres
  - 4. 240 metres

Question ID : 26433076278  
Status : Not Answered  
Chosen Option : --

**Q.10** A hollow spherical metal ball having an internal radius of 6.3 cm was cut into two equal parts. One part was filled with water whereas the other was kept empty. What is the volume (in  $\text{cm}^3$ , rounded off to one decimal place) of water in the bowl (take  $\pi = \frac{22}{7}$ )?

- Ans**  1. 523.9  
 2. 433.8  
 3. 520.9  
 4. 550.9

Question ID : 26433075252  
Status : Answered  
Chosen Option : 1

**Q.11** A sum on compound interest amounts to Rs.2,809 in 2 years and Rs.2,977.54 in 3 years. The rate per cent per annum is:

- Ans**  1. 12%  
 2. 6%  
 3. 10%  
 4. 8%

Question ID : 26433075157  
Status : Not Answered  
Chosen Option : --

**Q.12** The single discount equivalent to three successive discounts of 20%, 10% and 2% is:

- Ans**  1. 32%  
 2. 29.56%  
 3. 30.44%  
 4. 29.44%

Question ID : 26433062635  
Status : Answered  
Chosen Option : 4

**Q.13** Amol can do a piece of work in 96 days and Isha can do the same work in 60 days. They worked together for 30 days and then Isha left the work. Find the days taken by Amol to finish the remaining work.

- Ans**  1. 22 days  
 2. 24 days  
 3. 12 days  
 4. 18 days

Question ID : 264330116905  
Status : Answered  
Chosen Option : 4

Q.14 Somaraj borrowed an amount of Rs.11,550 at an interest rate of 10% per annum, compounded annually. He paid the entire amount in two equal annual instalments. What is the value of each instalment?

- Ans
- 1. Rs.5775
  - 2. Rs.4455
  - 3. Rs.7755
  - 4. Rs.6655

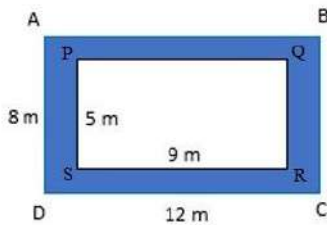
Question ID : 26433075737  
Status : Answered  
Chosen Option : 4

Q.15 In an election, two candidates were against each other. One candidate received 44% votes and lost the election by 7488 votes. How many votes did the winner receive?

- Ans
- 1. 39444
  - 2. 39544
  - 3. 35944
  - 4. 34944

Question ID : 26433080377  
Status : Answered  
Chosen Option : 3

Q.16 Calculate the area of the shaded region of the given rectangle ABCD. (PQRS is also rectangle)



- Ans
- 1. 51 m<sup>2</sup>
  - 2. 50 m<sup>2</sup>
  - 3. 53 m<sup>2</sup>
  - 4. 52 m<sup>2</sup>

Question ID : 26433075525  
Status : Answered  
Chosen Option : 1

Q.17 If  $45a + 45b = 6750$ , then find the average of a and b.

- Ans
- 1. 150
  - 2. 75
  - 3. 95
  - 4. 85

Question ID : 26433076171  
Status : Answered  
Chosen Option : 2

**Q.18** A company offers a 30% rebate on the marked price of a product. The retailer offers another 15% rebate on the reduced price. The two reductions are equivalent to a single reduction of:

- Ans  1. 40.5 Percent  
 2. 35.5 Percent  
 3. 42.0 Percent  
 4. 45.5 Percent

Question ID : 26433082715  
Status : Answered  
Chosen Option : 1

**Q.19** 4 years ago, the average age of a family of 4 members was 16 years. A baby is born today. What will be the present average age of 5 members of the family?

- Ans  1. 15 years  
 2. 22 years  
 3. 18 years  
 4. 16 years

Question ID : 26433079762  
Status : Not Answered  
Chosen Option : --

**Q.20** The sum of three numbers is 135. If the ratio of the first to the second number is 4 : 5, and that of the second to the third number is 5 : 6, then the first number is:

- Ans  1. 36  
 2. 45  
 3. 54  
 4. 64

Question ID : 26433080116  
Status : Answered  
Chosen Option : 1

Section : Part-D-English

**Q.1** Select the most appropriate synonym of the word 'stimulate' from the following sentence.

His jovial nature energises and charms the whole auditorium.

- Ans  1. Energises  
 2. Charms  
 3. Jovial  
 4. Auditorium

Question ID : 26433072261  
Status : Answered  
Chosen Option : 3

Q.2 Select the most appropriate option that can substitute the underlined segment in the given sentence.

The invitation card very clearly mentions that the entry in the show will be closed at 6 p.m.

- Ans
- 1. entry about the show will be
  - 2. entry over the show will be
  - 3. entry on the show will be
  - 4. entry to the show will be

Question ID : 264330100988  
Status : Answered  
Chosen Option : 4

Q.3 Select the most appropriate option to fill in the blank.

There was a story about a kind tree and a little boy. He used to sit \_\_\_\_\_ the shade of the tree.

- Ans
- 1. near
  - 2. in
  - 3. with
  - 4. beside

Question ID : 26433072729  
Status : Answered  
Chosen Option : 2

Q.4 The following sentence has been divided into parts. One of them may contain an error. Select the part that contains the error from the given options. If you don't find any error, mark 'No error' as your answer.

The forest ranger always / treats all the wild animals / in his area very kindly.

- Ans
- 1. treats all the wild animals
  - 2. in his area very kindly
  - 3. No error
  - 4. The forest ranger always

Question ID : 26433073762  
Status : Answered  
Chosen Option : 3

Q.5 Select the most appropriate ANTONYM to substitute the underlined word in the given sentence.

The evasive nature of the politician is what is making her a poor choice for the post.

- Ans
- 1. freaky
  - 2. elusive
  - 3. greasy
  - 4. truthful

Question ID : 26433074012  
Status : Not Answered  
Chosen Option : --



**Q.6** Select the most appropriate synonym of the given word.

**Impress**

- Ans**  1. Anxious  
 2. Endure  
 3. Influence  
 4. Suffice

Question ID : 26433073395  
Status : Answered  
Chosen Option : 3

**Q.7** Select the most appropriate meaning of the given idiom.

**In the long run**

- Ans**  1. Purposeful refusing  
 2. Simultaneously  
 3. In the end  
 4. Careful running

Question ID : 26433073711  
Status : Answered  
Chosen Option : 2

**Q.8** Select the INCORRECTLY spelt word.

- Ans**  1. Palpable  
 2. Endavour  
 3. Reckless  
 4. Rubbish

Question ID : 26433073651  
Status : Answered  
Chosen Option : 2

**Q.9** Select the most appropriate option that can substitute the underlined segment in the given sentence.

The division of labour is the second strategy to possess money.

- Ans**  1. to build wealth  
 2. to make physique  
 3. to give support  
 4. to make strategy

Question ID : 26433088510  
Status : Answered  
Chosen Option : 1

**Q.10** The sentence given below has one misspelt word. Spot the INCORRECTLY spelt word and select its correct spelling.

She needs to visit a physiotherapist.

- Ans
- 1. Physeotherapist
  - 2. Fiziotherapist
  - 3. Physiotherapist
  - 4. Fiotherapist

Question ID : 26433073554  
Status : Answered  
Chosen Option : 3

**Q.11** Select the most appropriate ANTONYM of the given word.  
Capture

- Ans
- 1. Abolish
  - 2. Establish
  - 3. Liberate
  - 4. Seize

Question ID : 26433086343  
Status : Answered  
Chosen Option : 3

**Q.12** Select the word that is similar in meaning to the underlined word.

It was difficult to find a police officer who was not partial.

- Ans
- 1. Coward
  - 2. Weak
  - 3. Corrupt
  - 4. Biased

Question ID : 26433087946  
Status : Answered  
Chosen Option : 3

**Q.13** Select the most appropriate meaning of the given idiom.

Armed to the teeth

- Ans
- 1. Carrying a lot of weapons
  - 2. Decide to continue in spite of difficulties
  - 3. Very frustrated
  - 4. Very difficult to do

Question ID : 26433072682  
Status : Answered  
Chosen Option : 4

**Q.14 Select the most appropriate ANTONYM of the given word.**

**Hesitate**

- Ans  1. Reform  
 2. Vacillate  
 3. Imitate  
 4. Resolve

Question ID : 26433088494  
Status : Answered  
Chosen Option : 1

**Q.15 Select the most appropriate ANTONYM of the given word.**

**Reluctant**

- Ans  1. Cautious  
 2. Willing  
 3. Resistant  
 4. Miserable

Question ID : 26433071968  
Status : Answered  
Chosen Option : 2

**Comprehension:**

In the following passage, some words have been deleted. Read the passage carefully and select the most appropriate option to fill in each blank.

Tourists Travelling(1) \_\_\_\_\_ Jammu and Kashmir have another attraction – a floating post office on the Dal Lake in Srinagar, the first in the country. 'Floating Post Office, Dal Lake – claimed to be the only one such post office in the world – is (2) \_\_\_\_\_ on an intricately carved maroon houseboat, fastened on the western edge of the Dal Lake.

This post office lets you (3) \_\_\_\_\_ all the regular postal services available in the country while being afloat. The seal used on everything posted from the Floating Post Office is unique – along with the date and address. It bears the design of a boatman rowing a Shikara on the Dal Lake. The special feature of this post office is that letters posted from here carry a special design which has the picturesque scenery of Dal Lake and Srinagar city. These pictures reach wherever these letters are posted to and (4) \_\_\_\_\_ promote Kashmir as a tourist destination across the world.

This is actually a heritage post office that has existed since British times. It was called the Nehru Park Post Office before 2011. But after that the chief postmaster John Samuel renamed it as 'Floating Post Office'.

The post office's houseboat has two small rooms – one (5) \_\_\_\_\_ as the office and the other a small museum that traces the philatelic history of the state postal department. It has a shop that sells postage stamps and other products.

**SubQuestion No : 16**

**Q.16 Select the most appropriate option to fill in blank number 1.**

- Ans  1. from  
 2. beside  
 3. by  
 4. to

Question ID : 26433060960  
Status : Answered  
Chosen Option : 4

**Comprehension:**

In the following passage, some words have been deleted. Read the passage carefully and select the most appropriate option to fill in each blank.

Tourists Travelling(1) \_\_\_\_\_ Jammu and Kashmir have another attraction – a floating post office on the Dal Lake in Srinagar, the first in the country. 'Floating Post Office, Dal Lake – claimed to be the only one such post office in the world – is (2) \_\_\_\_\_ on an intricately carved maroon houseboat, fastened on the western edge of the Dal Lake.

This post office lets you (3) \_\_\_\_\_ all the regular postal services available in the country while being afloat. The seal used on everything posted from the Floating Post Office is unique – along with the date and address. It bears the design of a boatman rowing a Shikara on the Dal Lake. The special feature of this post office is that letters posted from here carry a special design which has the picturesque scenery of Dal Lake and Srinagar city. These pictures reach wherever these letters are posted to and (4) \_\_\_\_\_ promote Kashmir as a tourist destination across the world.

This is actually a heritage post office that has existed since British times. It was called the Nehru Park Post Office before 2011. But after that the chief postmaster John Samuel renamed it as 'Floating Post Office'.

The post office's houseboat has two small rooms – one (5) \_\_\_\_\_ as the office and the other a small museum that traces the philatelic history of the state postal department. It has a shop that sells postage stamps and other products.

**SubQuestion No : 17**

**Q.17** Select the most appropriate option to fill in blank number 2.

- Ans  1. build  
 2. was built  
 3. building  
 4. built

Question ID : 26433060961

Status : Answered

Chosen Option : 4

**Comprehension:**

In the following passage, some words have been deleted. Read the passage carefully and select the most appropriate option to fill in each blank.

Tourists Travelling(1) \_\_\_\_\_ Jammu and Kashmir have another attraction – a floating post office on the Dal Lake in Srinagar, the first in the country. 'Floating Post Office, Dal Lake – claimed to be the only one such post office in the world – is (2) \_\_\_\_\_ on an intricately carved maroon houseboat, fastened on the western edge of the Dal Lake.

This post office lets you (3) \_\_\_\_\_ all the regular postal services available in the country while being afloat. The seal used on everything posted from the Floating Post Office is unique – along with the date and address. It bears the design of a boatman rowing a Shikara on the Dal Lake. The special feature of this post office is that letters posted from here carry a special design which has the picturesque scenery of Dal Lake and Srinagar city. These pictures reach wherever these letters are posted to and (4) \_\_\_\_\_ promote Kashmir as a tourist destination across the world.

This is actually a heritage post office that has existed since British times. It was called the Nehru Park Post Office before 2011. But after that the chief postmaster John Samuel renamed it as 'Floating Post Office'.

The post office's houseboat has two small rooms – one (5) \_\_\_\_\_ as the office and the other a small museum that traces the philatelic history of the state postal department. It has a shop that sells postage stamps and other products.

**SubQuestion No : 18**

**Q.18** Select the most appropriate option to fill in blank number 3.

- Ans  1. seen  
 2. avail  
 3. account  
 4. mileage

Question ID : 26433060962

Status : Answered

Chosen Option : 2

**Comprehension:**

In the following passage, some words have been deleted. Read the passage carefully and select the most appropriate option to fill in each blank.

Tourists Travelling(1) \_\_\_\_\_ Jammu and Kashmir have another attraction – a floating post office on the Dal Lake in Srinagar, the first in the country. 'Floating Post Office, Dal Lake – claimed to be the only one such post office in the world – is (2) \_\_\_\_\_ on an intricately carved maroon houseboat, fastened on the western edge of the Dal Lake.

This post office lets you (3) \_\_\_\_\_ all the regular postal services available in the country while being afloat. The seal used on everything posted from the Floating Post Office is unique – along with the date and address. It bears the design of a boatman rowing a Shikara on the Dal Lake. The special feature of this post office is that letters posted from here carry a special design which has the picturesque scenery of Dal Lake and Srinagar city. These pictures reach wherever these letters are posted to and (4) \_\_\_\_\_ promote Kashmir as a tourist destination across the world.

This is actually a heritage post office that has existed since British times. It was called the Nehru Park Post Office before 2011. But after that the chief postmaster John Samuel renamed it as 'Floating Post Office'.

The post office's houseboat has two small rooms – one (5) \_\_\_\_\_ as the office and the other a small museum that traces the philatelic history of the state postal department. It has a shop that sells postage stamps and other products.

**SubQuestion No : 19**

**Q.19** Select the most appropriate option to fill in blank number 4.

- Ans**  1. however  
 2. in hindsight  
 3. than  
 4. hence

Question ID : 26433060963

Status : Answered

Chosen Option : 4

**Comprehension:**

In the following passage, some words have been deleted. Read the passage carefully and select the most appropriate option to fill in each blank.

Tourists Travelling(1) \_\_\_\_\_ Jammu and Kashmir have another attraction – a floating post office on the Dal Lake in Srinagar, the first in the country. 'Floating Post Office, Dal Lake – claimed to be the only one such post office in the world – is (2) \_\_\_\_\_ on an intricately carved maroon houseboat, fastened on the western edge of the Dal Lake.

This post office lets you (3) \_\_\_\_\_ all the regular postal services available in the country while being afloat. The seal used on everything posted from the Floating Post Office is unique – along with the date and address. It bears the design of a boatman rowing a Shikara on the Dal Lake. The special feature of this post office is that letters posted from here carry a special design which has the picturesque scenery of Dal Lake and Srinagar city. These pictures reach wherever these letters are posted to and (4) \_\_\_\_\_ promote Kashmir as a tourist destination across the world.

This is actually a heritage post office that has existed since British times. It was called the Nehru Park Post Office before 2011. But after that the chief postmaster John Samuel renamed it as 'Floating Post Office'.

The post office's houseboat has two small rooms – one (5) \_\_\_\_\_ as the office and the other a small museum that traces the philatelic history of the state postal department. It has a shop that sells postage stamps and other products.

**SubQuestion No : 20**

**Q.20** Select the most appropriate option to fill in blank number 5.

- Ans  1. guides  
 2. serves  
 3. handles  
 4. directs

Question ID : 26433060964

Status : Answered

Chosen Option : 2

**Section : Part-D-Hindi**

**Q.1** 'जैसा उचित हो वैसा' इस वाक्यांश के लिए सार्थक शब्द है -

- Ans  1. वांछित  
 2. यथालाभ  
 3. अभीप्सित  
 4. यथोचित

Question ID : 26433062335

Status : Not Answered

Chosen Option : --

**Q.2** "पत्र में जो कहा है, सब झूठ है।"

उपरोक्त वाक्य में क्रिया सम्बन्धी त्रुटि पहचानकर निम्नलिखित में से शुद्ध वाक्य का चयन कीजिए।

- Ans  1. पत्र में जो लिखा है, सब झूठ है।  
 2. पत्र में जो स्पष्ट है, सब झूठ है।  
 3. पत्र में जो बताया है, सब झूठ है।  
 4. पत्र में जो भेजा है, सब झूठ है।

Question ID : 26433066976

Status : Not Answered

Chosen Option : --

Q.3 'वह द्वार पर खड़ा है।' अनिश्चयवाचक सर्वनाम का प्रयोग कर इस वाक्य को लिखिए।

- Ans
- 1. मैं द्वार पर खड़ा हूँ।
  - 2. कोई द्वार पर खड़ा है।
  - 3. वे द्वार पर खड़े हैं।
  - 4. वह स्वयं द्वार पर खड़ा है।

Question ID : 26433062319  
Status : Not Answered  
Chosen Option : --

Q.4 वृक्ष पर ढेरों फल लगे हैं।

उपरोक्त वाक्य में रेखांकित शब्द के उचित पर्यायवाची शब्द का चयन विकल्पों में से कीजिए।

- Ans
- 1. वसन
  - 2. अनार
  - 3. तरु
  - 4. मृगेंद्र

Question ID : 26433079723  
Status : Not Answered  
Chosen Option : --

Q.5 निम्नलिखित वाक्य में रेखांकित खंड के स्थान पर प्रयुक्त होने वाले सबसे उपयुक्त विकल्प का चयन कीजिए-

उसकी आँखों से शोले टपक पड़े।

- Ans
- 1. अँगारे
  - 2. पसीना
  - 3. आँसू
  - 4. क्रोध

Question ID : 26433069748  
Status : Not Answered  
Chosen Option : --

Q.6 निम्नलिखित वाक्यांश के लिए एक सार्थक शब्द चुनिए।

जिसे न जीता जा सके

- Ans
- 1. अजेय
  - 2. अमर
  - 3. अजर
  - 4. अपराजय

Question ID : 26433069986  
Status : Not Answered  
Chosen Option : --



Q.7 निम्नलिखित में से शुद्ध वाक्य है-

- Ans
- 1. तुम किताब पढ़ते हो।
  - 2. तुम किताब पठते हो।
  - 3. तुम कितब पढ़ते हो।
  - 4. तुम किताब पढ़ते हो।

Question ID : 26433066839  
Status : Not Answered  
Chosen Option : --

Q.8 'काला अक्षर भैंस बराबर' मुहावरे का सही अर्थ है-

- Ans
- 1. बहुत होशियार होना
  - 2. पढ़ने में अच्छा होना
  - 3. अच्छी भैंस होना
  - 4. निरक्षर होना

Question ID : 26433062608  
Status : Not Answered  
Chosen Option : --

Q.9 "आज संसद में बजट के ऊपर बहस होगी।"

उपरोक्त वाक्य में कारक सम्बन्धी त्रुटि पहचानकर निम्नलिखित में से शुद्ध वाक्य का चयन कीजिए।

- Ans
- 1. आज संसद में बजट पर बहस होगी।
  - 2. आज संसद की बजट के ऊपर बहस होगी।
  - 3. आज संसद से बजट पर बहस होगी।
  - 4. आज संसद पर बजट की बहस होगी।

Question ID : 26433066969  
Status : Not Answered  
Chosen Option : --

Q.10 'मनुष्य अपने कर्म के अनुसार फल पाता है।'

उपरोक्त वाक्य में प्रयुक्त 'फल' शब्द निम्न में से किस अर्थ को व्यक्त करता है?

- Ans
- 1. विकास
  - 2. परिणाम
  - 3. विनाश
  - 4. वृक्ष का फल

Question ID : 26433080911  
Status : Not Answered  
Chosen Option : --

Q.11 पुलिस ने मयंक से जब चोरी के बारे में पूछा तो मयंक \_\_\_\_\_ झूठ बोल गया।  
रिक्त स्थान की पूर्ति उचित मुहावरा शब्द द्वारा कीजिए।

- Ans
- 1. काला
  - 2. सफेद
  - 3. सभी
  - 4. एकदम

Question ID : 26433062615  
Status : Not Answered  
Chosen Option : --

Q.12 'यह नाटक बहुत अच्छी है' – इस वाक्य में किस प्रकार की त्रुटि है, पहचान करें?

- Ans
- 1. पदक्रम संबंधी
  - 2. वचन संबंधी
  - 3. लिंग संबंधी
  - 4. अनावश्यक शब्द संबंधी

Question ID : 26433067107  
Status : Not Answered  
Chosen Option : --

Q.13 समुद्र की आग  
ऊपर दिए गए वाक्यांश के लिए एक शब्द क्या होगा?

- Ans
- 1. बड़वानल
  - 2. जठरानल
  - 3. दावानल
  - 4. बड़वामुख

Question ID : 26433090350  
Status : Not Answered  
Chosen Option : --

Q.14 निम्नलिखित वाक्य में रेखांकित शब्द के विलोम शब्द का प्रयोग करके रिक्त स्थान की पूर्ति कीजिए।  
सगुण और \_\_\_\_\_ दोनों ही परमात्मा के स्वरूप हैं।

- Ans
- 1. निर्मल
  - 2. विपुल
  - 3. निर्गुण
  - 4. सांख्य

Question ID : 26433091345  
Status : Not Answered  
Chosen Option : --

Q.15 निम्नलिखित में से 'चपला' का अर्थ नहीं होता है-

- Ans
- 1. लक्ष्मी
  - 2. चंचल
  - 3. बिजली
  - 4. मन

Question ID : 26433080949

Status : Not Answered

Chosen Option : --

**Comprehension:**

निम्नलिखित गद्यांश में कुछ शब्दों को हटा दिया गया है। दिए गए विकल्पों की सहायता से रिक्त स्थानों की पूर्ति कीजिए। प्रत्येक संख्या के लिए सबसे उपयुक्त विकल्प का चयन कीजिए।  
अनुशासन के बिना जीवन निष्क्रिय और 1. \_\_\_\_\_ हो जाता है क्योंकि योजना के अनुसार कुछ भी नहीं होता है। 2. \_\_\_\_\_ हमें किसी भी कार्य को पूरा करना है, और सही तरीके से अपनी रणनीति को लागू करना है, तो हमें पहले अनुशासन में रहने की 3. \_\_\_\_\_ है। अनुशासन चीजों को 4. \_\_\_\_\_ बनाता है और हमारे जीवन में 5. \_\_\_\_\_ लाता है।

SubQuestion No : 16

Q.16 रिक्त स्थान 1 की पूर्ति के लिए सबसे उपयुक्त विकल्प का चयन करें।

- Ans
- 1. आसान
  - 2. मज़ेदार
  - 3. बेकार
  - 4. सहज

Question ID : 264330110897

Status : Not Answered

Chosen Option : --

**Comprehension:**

निम्नलिखित गद्यांश में कुछ शब्दों को हटा दिया गया है। दिए गए विकल्पों की सहायता से रिक्त स्थानों की पूर्ति कीजिए। प्रत्येक संख्या के लिए सबसे उपयुक्त विकल्प का चयन कीजिए।  
अनुशासन के बिना जीवन निष्क्रिय और 1. \_\_\_\_\_ हो जाता है क्योंकि योजना के अनुसार कुछ भी नहीं होता है। 2. \_\_\_\_\_ हमें किसी भी कार्य को पूरा करना है, और सही तरीके से अपनी रणनीति को लागू करना है, तो हमें पहले अनुशासन में रहने की 3. \_\_\_\_\_ है। अनुशासन चीजों को 4. \_\_\_\_\_ बनाता है और हमारे जीवन में 5. \_\_\_\_\_ लाता है।

SubQuestion No : 17

Q.17 रिक्त स्थान 2 की पूर्ति के लिए सबसे उपयुक्त विकल्प का चयन करें।

- Ans
- 1. मगर
  - 2. कभी
  - 3. अगर
  - 4. जबकि

Question ID : 264330110898

Status : Not Answered

Chosen Option : --

**Comprehension:**

निम्नलिखित गद्यांश में कुछ शब्दों को हटा दिया गया है। दिए गए विकल्पों की सहायता से रिक्त स्थानों की पूर्ति कीजिए। प्रत्येक संख्या के लिए सबसे उपयुक्त विकल्प का चयन कीजिए।  
अनुशासन के बिना जीवन निष्क्रिय और 1. \_\_\_\_\_ हो जाता है क्योंकि योजना के अनुसार कुछ भी नहीं होता है। 2. \_\_\_\_\_ हमें किसी भी कार्य को पूरा करना है, और सही तरीके से अपनी रणनीति को लागू करना है, तो हमें पहले अनुशासन में रहने की 3. \_\_\_\_\_ है। अनुशासन चीजों को 4. \_\_\_\_\_ बनाता है और हमारे जीवन में 5. \_\_\_\_\_ लाता है।

**SubQuestion No : 18**

Q.18 रिक्त स्थान 3 की पूर्ति के लिए सबसे उपयुक्त विकल्प का चयन करें।

- Ans
- 1. मूल्यहीन
  - 2. अवश्यक
  - 3. अनावश्यकता
  - 4. आवश्यकता

Question ID : 264330110899

Status : Not Answered

Chosen Option : --

**Comprehension:**

निम्नलिखित गद्यांश में कुछ शब्दों को हटा दिया गया है। दिए गए विकल्पों की सहायता से रिक्त स्थानों की पूर्ति कीजिए। प्रत्येक संख्या के लिए सबसे उपयुक्त विकल्प का चयन कीजिए।  
अनुशासन के बिना जीवन निष्क्रिय और 1. \_\_\_\_\_ हो जाता है क्योंकि योजना के अनुसार कुछ भी नहीं होता है। 2. \_\_\_\_\_ हमें किसी भी कार्य को पूरा करना है, और सही तरीके से अपनी रणनीति को लागू करना है, तो हमें पहले अनुशासन में रहने की 3. \_\_\_\_\_ है। अनुशासन चीजों को 4. \_\_\_\_\_ बनाता है और हमारे जीवन में 5. \_\_\_\_\_ लाता है।

**SubQuestion No : 19**

Q.19 रिक्त स्थान 4 की पूर्ति के लिए सबसे उपयुक्त विकल्प का चयन करें।

- Ans
- 1. दुर्गम
  - 2. आसान
  - 3. दुर्भेद्य
  - 4. कठिन

Question ID : 264330110900

Status : Not Answered

Chosen Option : --

**Comprehension:**

निम्नलिखित गद्यांश में कुछ शब्दों को हटा दिया गया है। दिए गए विकल्पों की सहायता से रिक्त स्थानों की पूर्ति कीजिए। प्रत्येक संख्या के लिए सबसे उपयुक्त विकल्प का चयन कीजिए।  
अनुशासन के बिना जीवन निष्क्रिय और 1. \_\_\_\_\_ हो जाता है क्योंकि योजना के अनुसार कुछ भी नहीं होता है। 2. \_\_\_\_\_ हमें किसी भी कार्य को पूरा करना है, और सही तरीके से अपनी रणनीति को लागू करना है, तो हमें पहले अनुशासन में रहने की 3. \_\_\_\_\_ है। अनुशासन चीजों को 4. \_\_\_\_\_ बनाता है और हमारे जीवन में 5. \_\_\_\_\_ लाता है।

**SubQuestion No : 20**

**Q.20** रिक्त स्थान 5 की पूर्ति के लिए सबसे उपयुक्त विकल्प का चयन करें।

- Ans**  1. असफलता  
 2. सफलता  
 3. बेरोजगारी  
 4. कठिनता

Question ID : 264330110901

Status : Not Answered

Chosen Option : --

KD Job Updates

## Constable GD in CAPFs SSF Rifleman GD in Assam Rifles and Sepoy in NCB Examination 2022

Roll Number	<b>KD Job Updates</b>
Candidate Name	<b>KD Job Updates</b>
Venue Name	Sri Balaji College Of Engineering And Technology
Exam Date	09/02/2023
Exam Time	5:15 PM - 6:15 PM
Subject	Constable GD Examination 2022

Section : **Part-A-General Intelligence and Reasoning**

**Q.1** Three statements are given followed by three conclusions numbered I, II and III. Assuming the statements to be true, even if they seem to be at variance with commonly known facts, decide which of the conclusions logically follow(s) from the statements.

Statements:

All drinks are shakes.

All teas are shakes.

All shakes are coffee.

Conclusions:

I. All coffees are teas.

II. All coffees are drinks.

III. Some coffees are shakes.

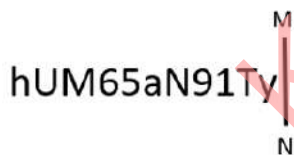
- Ans  1. Only conclusion II follows
2. Only conclusion III follows
3. Only conclusions I and III follow
4. Only conclusions I and II follow

Question ID : 26433082308

Status : Answered

Chosen Option : 2

**Q.2** Select the correct mirror image of the given figure when the mirror is placed at MN as shown below.



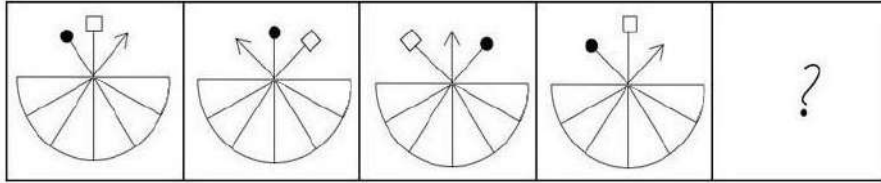
- Ans  1. yT1eN6zəMUh
2. yT1eN6zəMUh
3. yT1eN6zəMUh
4. yT1eN6zəMUh

Question ID : 26433085541

Status : Answered

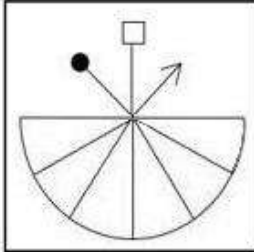
Chosen Option : 4

Q.3 Select the figure that will come in place of the question mark (?) in the following figure series.

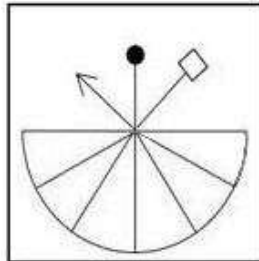


Ans

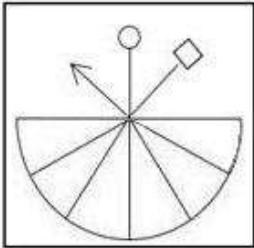
✗ 1.



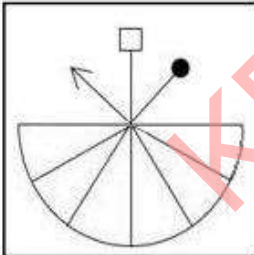
✓ 2.



✗ 3.



✗ 4.



Question ID : 26433081691

Status : Answered

Chosen Option : 2

Q.4 In a certain coded language, 'war door' is coded as 'plane potato', 'cauliflower war' is coded as 'racecar plane', and 'door tower' is coded as 'potato mountain'. What is the code word for 'tower'?

- Ans
- 1. racecar
  - 2. plane
  - 3. mountain
  - 4. potato

Question ID : 26433069038  
Status : Answered  
Chosen Option : 3

Q.5 Seven people, A, B, C, D, E, F and G are sitting in a straight row, facing north. A sits third to the left of D. D sits to the extreme right. Only two people sit between A and F. B is an immediate neighbour of F. Only one person sits between C and D. G is not an immediate neighbour of A. Who sits to the extreme left?

- Ans
- 1. G
  - 2. F
  - 3. E
  - 4. B

Question ID : 26433056928  
Status : Answered  
Chosen Option : 2

Q.6 Which of the following terms will replace the question mark (?) in the given series?  
BTLW, YXIA, VBFE, SFCI, ?

- Ans
- 1. PBZI
  - 2. VJCN
  - 3. VJCM
  - 4. PJZM

Question ID : 26433069452  
Status : Answered  
Chosen Option : 4

Q.7 Select the option that is related to the third word in the same way as the second word is related to the first word.

(The words must be considered as meaningful English words and must not be related to each other based on the number of letters/number of consonants/vowels in the word)

Litchi : Fruit :: Jive : ?

- Ans
- 1. Horse
  - 2. Black
  - 3. Dance
  - 4. Computer

Question ID : 26433079479  
Status : Answered  
Chosen Option : 3



Q.8 Which of the following letter-clusters will replace the question mark (?) in the given series?

EINT, DJMU, CKLV, ?, AMJX

- Ans
- 1. BMKX
  - 2. ALXW
  - 3. BMKV
  - 4. BLKW

Question ID : 26433076433

Status : Answered

Chosen Option : 4

Q.9 Select the correct combination of mathematical signs to sequentially replace the \* signs and to balance the given equation.

$92 * 4 * 5 * 5 * 5 * 7$

- Ans
- 1. ÷, =, ×, +, -
  - 2. -, +, =, ÷, ×
  - 3. =, +, -, ×, ÷
  - 4. ×, ÷, =, -, +

Question ID : 26433094992

Status : Answered

Chosen Option : 1

Q.10 In a certain code language,

'A + B' means 'A is the brother of B',

'A - B' means 'A is the mother of B',

'A × B' means 'A is the son of B' and

'A ÷ B' means 'A is the sister of B'.

If  $C + D - L ÷ P × Q × V$ , then which of the following statements is NOT correct?

- Ans
- 1. C is P's father's brother.
  - 2. L is Q's daughter.
  - 3. D is V's son's wife.
  - 4. D is P's mother.

Question ID : 26433070376

Status : Answered

Chosen Option : 1

Q.11 In a certain code, the word 'PASTE' is written as 'FUTBQ'. The word 'VIBES' is written as 'TFCJW'. How is the word 'START' written in the same code?

- Ans
- 1. USBUT
  - 2. SUTBU
  - 3. TUBSU
  - 4. USUBT

Question ID : 26433090106

Status : Answered

Chosen Option : 4

Q.12 Which of the numbers(not digits) should be interchanged in the below equation to make it mathematically correct?

$$162 \div 9 \times 16 + 18 - 27 = 126$$

- Ans
- 1. 16 and 9
  - 2. 9 and 18
  - 3. 18 and 27
  - 4. 27 and 9

Question ID : 264330117529  
Status : Answered  
Chosen Option : 2

Q.13 Select the option that is related to the third term in the same way as the second term is related to the first term and the sixth term is related to the fifth term.

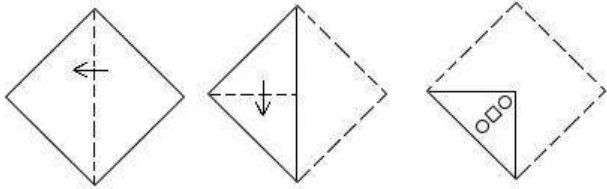
$$14 : 203 :: 16 : ? :: 18 : 333$$

- Ans
- 1. 224
  - 2. 264
  - 3. 230
  - 4. 274

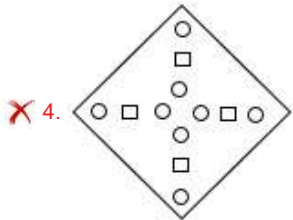
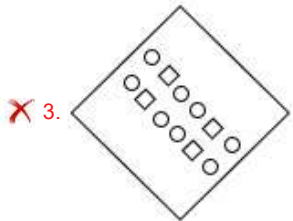
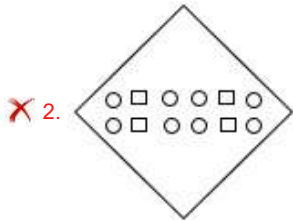
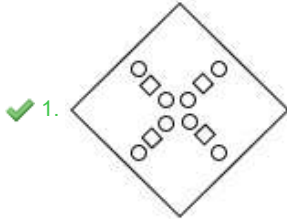
Question ID : 26433069091  
Status : Answered  
Chosen Option : 2

KD Job Updates

Q.14 A paper is folded and cut as shown below. How will it appear when unfolded?



Ans



KD Job Updates

Question ID : 26433090953  
 Status : Answered  
 Chosen Option : 1

Q.15 Which of the following numbers will replace the question mark (?) in the given series?  
 27, 28, 36, 63, ?, 252

- Ans ✓ 1. 127  
 ✗ 2. 131  
 ✗ 3. 130  
 ✗ 4. 125

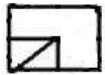
Question ID : 26433085640  
 Status : Answered  
 Chosen Option : 1

**Q.16** Six students Fernandes, Dsouza, Marc, Dmello, Anthony and Charlene are sitting around a circular table facing the centre. Fernandes is sitting to the immediate right of Dsouza. Marc is sitting second to the left of Fernandes. Anthony is sitting second to the right of Dsouza. Dmello is sitting to the immediate left of Marc. Charlene is sitting to the immediate right of Anthony. Who is sitting between Fernandes and Charlene?

- Ans
- 1. Dmello
  - 2. Marc
  - 3. Dsouza
  - 4. Anthony

Question ID : 26433081788  
 Status : Answered  
 Chosen Option : 4

**Q.17** Select the option figure in which the given figure is embedded as its part (rotation is not allowed).



Ans

- 1.
- 2.
- 3.
- 4.

Question ID : 26433069541  
 Status : Marked For Review  
 Chosen Option : 4

Q.18 Select the option that is related to the fifth term in the same way as the second term is related to the first term and the fourth term is related to the third term.  
HONK : MPRK :: STAR : TCWV :: LONE : ?

- Ans
- 1. MQQH
  - 2. GPQO
  - 3. GPRO
  - 4. QPRE

Question ID : 26433058007  
Status : Answered  
Chosen Option : 3

Q.19 Which of the following numbers will replace the question marks (?) in the given series?

44, 47, 52, 59, 68, ?, ?, 107

- Ans
- 1. 82, 98
  - 2. 88, 100
  - 3. 80, 94
  - 4. 79, 92

Question ID : 26433070225  
Status : Answered  
Chosen Option : 4

Q.20 Which of the following options represents the correct order of the given words as they would appear in the English dictionary?

1. Desist
2. Desert
3. Design
4. Deserve
5. Designate

- Ans
- 1. 2, 3, 5, 4, 1
  - 2. 2, 4, 3, 1, 5
  - 3. 2, 4, 3, 5, 1
  - 4. 3, 4, 2, 1, 5

Question ID : 26433086967  
Status : Answered  
Chosen Option : 3

Section : Part-B-General Knowledge and General awareness

Q.1 Pradhan Mantri Mudra Yojana (PMMY) is a scheme launched by the Hon'ble Prime Minister of India on April 8, 2015 for providing \_\_\_\_\_ to the non-corporate enterprises.

- Ans
- 1. skill training
  - 2. house
  - 3. subsidy
  - 4. loan

Question ID : 264330116204  
Status : Answered  
Chosen Option : 4

Q.2 Charu Sija Mathur is a name that is synonymous with \_\_\_\_\_ dance.

- Ans
- 1. Chhau
  - 2. Kuchipudi
  - 3. Odissi
  - 4. Manipuri

Question ID : 264330115858  
Status : Not Answered  
Chosen Option : --

Q.3 Which of the following Hindu goddesses is worshipped during the festival of Gangaur?

- Ans
- 1. Saraswati
  - 2. Kali
  - 3. Lakshmi
  - 4. Parvati

Question ID : 26433094894  
Status : Answered  
Chosen Option : 4

Q.4 Which Article of the Constitution of India sets out the different Fundamental Duties for Indian citizens?

- Ans
- 1. Article 74A
  - 2. Article 51A
  - 3. Article 88B
  - 4. Article 44B

Question ID : 26433054520  
Status : Answered  
Chosen Option : 2

Q.5 Article 76 of the Indian Constitution deals with \_\_\_\_\_.

- Ans
- 1. Attorney-General for India
  - 2. Council of Ministers
  - 3. Governor of India
  - 4. Home Minister

Question ID : 264330115660  
Status : Not Answered  
Chosen Option : --

**Q.6 Who is serving as the 34th Foreign Secretary of India from 2022?**

- Ans  1. Subrahmanyam Jaishankar  
 2. Vinay Mohan Kwatra  
 3. Harsh Vardhan Shringla  
 4. Vijay Keshav Gokhale

Question ID : 264330115019  
Status : Not Answered  
Chosen Option : --

**Q.7 Which of the following cities emerged as the second capital of the Kushanas during their empire?**

- Ans  1. Kannauj  
 2. Mathura  
 3. Purushpur  
 4. Pataliputra

Question ID : 26433089861  
Status : Not Answered  
Chosen Option : --

**Q.8 \_\_\_\_\_ are known as the powerhouses of the cell.**

- Ans  1. Mitochondria  
 2. Lysosomes  
 3. Ribosome  
 4. Nucleus

Question ID : 264330115237  
Status : Answered  
Chosen Option : 4

**Q.9 Which of the following is an example of direct tax?**

- Ans  1. Custom duty  
 2. Excise tax  
 3. Personal income tax  
 4. G.S.T.

Question ID : 26433054778  
Status : Answered  
Chosen Option : 3

Q.10 The dimensions of the basketball court is measured \_\_\_\_\_ from the inner edge of the boundary line.

- Ans
- 1.  $28 \times 12$  m
  - 2.  $30 \times 45$  m
  - 3.  $28 \times 15$  m
  - 4.  $30 \times 15$  m

Question ID : 26433089940  
Status : Not Answered  
Chosen Option : --

Q.11 Who was the president of the first session of Congress held in 1885?

- Ans
- 1. Dinshaw Wacha
  - 2. Dadabhai Naoroji
  - 3. Allan Octavian Hume
  - 4. Womesh Chandra Bonnerjee

Question ID : 26433099170  
Status : Not Answered  
Chosen Option : --

Q.12 Manik Saha, chief minister of Tripura, became Member of Legislative Assembly from \_\_\_\_\_ constituency in by-election held in June 2022.

- Ans
- 1. Gakulnagar
  - 2. Town Bardowali
  - 3. Agartala
  - 4. Belonia

Question ID : 264330114970  
Status : Not Answered  
Chosen Option : --

Q.13 Which country is the smallest neighbouring country of India area wise?

- Ans
- 1. Nepal
  - 2. Bhutan
  - 3. Sri Lanka
  - 4. Maldives

Question ID : 264330116096  
Status : Not Answered  
Chosen Option : --



Q.14 Which of the following is an example of endogenic forces?

Ans  1. Building mountains

2. Glaciers

3. Sea-waves

4. Wind

Question ID : 264330115999

Status : Not Answered

Chosen Option : --

Q.15 Identify an element that does NOT belong to the third period.

Ans  1. Silicon

2. Argon

3. Bromine

4. Phosphorus

Question ID : 26433087851

Status : Not Answered

Chosen Option : --

Q.16 Major Dhyan Chand was born in which of the following city of India?

Ans  1. Aligarh

2. Lucknow

3. Allahabad

4. Dehradun

Question ID : 264330116272

Status : Not Answered

Chosen Option : --

Q.17 \_\_\_\_\_ is an international body that lends capital to the government of various countries.

Ans  1. State bank of India

2. Reserve bank of India

3. Central bank of India

4. World bank

Question ID : 264330115316

Status : Answered

Chosen Option : 4

Q.18 In order to provide basic healthcare to all, \_\_\_\_\_ and \_\_\_\_\_ need to be integrated in our basic health infrastructure.

- Ans
- 1. education and medicine
  - 2. communication and technology
  - 3. accessibility and affordability
  - 4. education and technology

Question ID : 264330115563  
Status : Answered  
Chosen Option : 3

Q.19 Which of the following is a folk dance of Mizoram?

- Ans
- 1. Dhumal dance
  - 2. Chhau dance
  - 3. Koli dance
  - 4. Cheraw dance

Question ID : 26433071660  
Status : Not Answered  
Chosen Option : --

Q.20 Norman Borlaug, father of Green Revolution in the world, was awarded \_\_\_\_\_.

- Ans
- 1. Olympic medal
  - 2. Bharat Ratna
  - 3. Nobel peace prize
  - 4. Gallantry award

Question ID : 264330115432  
Status : Not Answered  
Chosen Option : --

Section : Part-C-Elementary Mathematics

Q.1 If an electricity bill is paid before the due date, one gets a reduction of 5% on the amount of the bill. If a person gets a reduction money of Rs.350, then the amount of electricity bill is:

- Ans
- 1. Rs.6,000
  - 2. Rs.6,500
  - 3. Rs.7,000
  - 4. Rs.8,000

Question ID : 26433061073  
Status : Answered  
Chosen Option : 3

Q.2 A can do a piece of work in 15 days and B does the same work in 25 days. In how many days will A and B together complete this work?

Ans

1.  $6\frac{5}{16}$

2.  $9\frac{3}{8}$

3.  $7\frac{5}{16}$

4.  $8\frac{5}{16}$

Question ID : 26433080228

Status : Answered

Chosen Option : 2

Q.3 The number 'a' is inversely proportional to 'e', when a = 50, e = 22. Find the equation relating 'a' and 'e'.

Ans

1.  $e = 11a$

2.  $a = \frac{1100}{e}$

3.  $a = 13e$

4.  $a = \frac{1213}{e}$

Question ID : 26433080035

Status : Answered

Chosen Option : 2

Q.4 The average number of passengers in a train increased from 135408 last year to 141050 this year. What was the increase percent?

Ans

1. 5.25 percent

2. 4.16 percent

3. 10.64 percent

4. 14.15 percent

Question ID : 264330116808

Status : Answered

Chosen Option : 2

Q.5 A principal will become ₹441 in 2 years at the rate of 5% per annum compound interest, compounding annually. What is the principal?

- Ans
- 1. ₹300
  - 2. ₹350
  - 3. ₹400
  - 4. ₹405

Question ID : 26433082927  
Status : Answered  
Chosen Option : 3

Q.6 The third proportional of  $a^2b$  and  $3ab$  is:

- Ans
- 1.  $9a$
  - 2.  $ab$
  - 3.  $9b$
  - 4.  $9ab$

Question ID : 26433075154  
Status : Answered  
Chosen Option : 3

Q.7 In an examination, 20% students failed in English, 60% failed in Mathematics and 15% failed in both. Find the percentage of students who passed in both the subjects.

- Ans
- 1. 36%
  - 2. 40%
  - 3. 34%
  - 4. 35%

Question ID : 26433080157  
Status : Answered  
Chosen Option : 4

Q.8 A dishonest shopkeeper uses a weight of 900 gm instead of 1 kg and sells 1 kg pulses at its cost price. What will be his profit percentage on selling 10 kg pulses?

- Ans
- 1.  $1\frac{100}{9}\%$
  - 2.  $\frac{100}{9}\%$
  - 3.  $\frac{10}{9}\%$
  - 4.  $1\frac{10}{9}\%$

Question ID : 26433074281  
Status : Answered  
Chosen Option : 2

Q.9 To go 144 km upstream, a rower takes 12 hours, while it takes her only 9 hours to row the same distance downstream. What was the speed (in km/h) of the stream?

- Ans  1. 2 km/h  
 2. 1 km/h  
 3. 1.5 km/h  
 4. 3 km/h

Question ID : 26433075815  
Status : Answered  
Chosen Option : 1

Q.10 Akshara sold an article for Rs.25,000. If she had offered a discount of 15% on the selling price, then she would have earned a profit of 10%. What is the cost price?

- Ans  1. Rs.18,318.20  
 2. Rs.20,318.18  
 3. Rs.25,519.20  
 4. Rs.19,318.18

Question ID : 26433082714  
Status : Answered  
Chosen Option : 4

Q.11 A man purchased 5 bags of rice at the rate of ₹900 each, 7 bags of rice at ₹1,000 each and 8 bags of rice at the rate of ₹1,200 each. What is the average cost of 1 kg of rice if each bag contains 50 kg of rice?

- Ans  1. ₹25.5  
 2. ₹19.1  
 3. ₹21.1  
 4. ₹20.5

Question ID : 26433081010  
Status : Marked For Review  
Chosen Option : 2

Q.12 In a class of only boys and girls, the number of girl is half the number of boys and the average marks of girls are double of the average marks of boys. If the average marks of the class are 56, then what are the average marks of boys?

- Ans  1. 40  
 2. 42  
 3. 44  
 4. 38

Question ID : 26433081703  
Status : Answered  
Chosen Option : 2

Q.13 A man can row upstream at 8 km/h and downstream at 12 km/h. Find the man's speed in still water and speed of water respectively?

- Ans
- 1. 10 km/h and 2 km/h
  - 2. 2 km/h and 10 km/h
  - 3. 8 km/h and 12 km/h
  - 4. 12 km/h and 8 km/h

Question ID : 26433073040  
Status : Answered  
Chosen Option : 1

Q.14 If the curved surface area of a solid hemisphere is  $2,772 \text{ cm}^2$ , find its volume (use  $\pi = \frac{22}{7}$ ).

- Ans
- 1. 29,414  $\text{cm}^3$
  - 2. 21,134  $\text{cm}^3$
  - 3. 12,324  $\text{cm}^3$
  - 4. 19,404  $\text{cm}^3$

Question ID : 26433075250  
Status : Answered  
Chosen Option : 4

Q.15 Find the least number, which is exactly divisible by 8, 24 and 30.

- Ans
- 1. 150
  - 2. 60
  - 3. 130
  - 4. 120

Question ID : 26433090278  
Status : Answered  
Chosen Option : 4

Q.16 A and B can do a piece of work in 42 days, and B and C can do it in 56 days. If B alone can do it in 70 days, in how many days can C do the work?

- Ans
- 1. 280 days
  - 2. 550 days
  - 3. 340 days
  - 4. 200 days

Question ID : 264330116888  
Status : Answered  
Chosen Option : 1

**Q.17** If in a triangle ABC,  $AB = AC$  and  $\angle ACD = 95^\circ$ , where D is an outside point on extension to line BC, then  $\angle BAC$  is equal to:

- Ans
- 1.  $55^\circ$
  - 2.  $65^\circ$
  - 3.  $15^\circ$
  - 4.  $10^\circ$

Question ID : 26433074241  
Status : Answered  
Chosen Option : 4

**Q.18** A, B and C start at the same time, from the same point and in the same direction to run around a circular ground. A completes a round in 240 sec, B in 300 sec and C in 160 sec. After how much time will they meet again at the starting point?

- Ans
- 1. 42 min
  - 2. 41 min
  - 3. 43 min
  - 4. 40 min

Question ID : 26433082605  
Status : Answered  
Chosen Option : 4

**Q.19** The compound interest on a sum at a certain rate per annum compounded annually for 2 years is Rs.832 and the simple interest on the same sum for the same period and at the same rate of interest is Rs.800. The difference in the compound interest and simple interest for a period of 3 years would be:

- Ans
- 1. Rs.99.48
  - 2. Rs.66.52
  - 3. Rs.48.00
  - 4. Rs.98.56

Question ID : 26433076042  
Status : Not Attempted and Marked For Review  
Chosen Option : --

**Q.20** A man purchased an old bicycle for ₹1,200 and spent ₹1,800 on its repairing. He sold it for ₹2,400. What is his loss percentage?

- Ans
- 1. 30 Percent
  - 2. 40 Percent
  - 3. 20 Percent
  - 4. 10 Percent

Question ID : 26433080219  
Status : Answered  
Chosen Option : 3

**Q.1** Select the **INCORRECTLY** spelt word.

- Ans  1. Unanimously  
 2. Teelotaler  
 3. Contagious  
 4. Irreparable

Question ID : 26433084698  
Status : Answered  
Chosen Option : 2

**Q.2** Select the most appropriate synonym of the word given in brackets to fill in the blank.

Technology has \_\_\_\_\_ (supreme) importance in the life of modern men.

- Ans  1. paramount  
 2. magnanimous  
 3. miraculous  
 4. profuse

Question ID : 26433070466  
Status : Answered  
Chosen Option : 1

**Q.3** Select the most appropriate option that can substitute the underlined segment in the given sentence. If there is no need to substitute it, select 'No substitution'.

Alice won't be coming to the concert as she was ill.

- Ans  1. No substitution  
 2. she is  
 3. she is going to be  
 4. she will be

Question ID : 26433088909  
Status : Answered  
Chosen Option : 4

**Q.4** Select the most appropriate meaning of the underlined idiom.

One can always start off with a clean slate for a new and better life.

- Ans  1. Situation in which you can start again  
 2. An innocent man who has nothing to spend  
 3. Provide a clear record to one's superiors  
 4. A person with no crimes to his record

Question ID : 26433073207  
Status : Answered  
Chosen Option : 1



Q.5 Select the most appropriate ANTONYM of the underlined word in the given sentence.

Sanjeev is always busy with his business activities.

- Ans
- 1. active
  - 2. engaged
  - 3. idle
  - 4. enthusiastic

Question ID : 26433092093  
Status : Answered  
Chosen Option : 3

Q.6 Select the most appropriate ANTONYM of the given word.

Enormous

- Ans
- 1. Broad
  - 2. Huge
  - 3. Gorgeous
  - 4. Tiny

Question ID : 26433073921  
Status : Answered  
Chosen Option : 4

Q.7 Select the most appropriate meaning of the underlined idiom in the given sentence.

The matrimonial alliance between the two kingdoms was actually a Judas kiss.

- Ans
- 1. Deceitful pretence of friendship
  - 2. Incestuous relationship
  - 3. A strong bond
  - 4. Made through intense bloodshed

Question ID : 26433072090  
Status : Answered  
Chosen Option : 1

Q.8 Select the most appropriate synonym of the given word.

Confined

- Ans
- 1. Limited
  - 2. Extravagant
  - 3. Diluted
  - 4. Halted

Question ID : 26433088758  
Status : Answered  
Chosen Option : 1

Q.9 A part of the given sentence which has been underlined may contain a spelling error. Select the option that correctly rectifies the spelling error. If there is no error, select 'No error'.

Writing under a psuedonym might not give one the actual recognition that he/she deserves.

- Ans  1. Pseudonym  
 2. Pseudoniem  
 3. Psaudonym  
 4. No error

Question ID : 26433071790  
Status : Answered  
Chosen Option : 1

Q.10 Select the word that is similar in meaning to the underlined word.

This course will provide you with a rudimentary knowledge of Sanskrit.

- Ans  1. Extensive  
 2. Exhaustive  
 3. Elementary  
 4. Intricate

Question ID : 26433087947  
Status : Answered  
Chosen Option : 1

Q.11 Select the most appropriate synonym of the given word.

Gigantic

- Ans  1. Idle  
 2. Small  
 3. Tiny  
 4. Huge

Question ID : 26433074048  
Status : Answered  
Chosen Option : 4

Q.12 Select the most appropriate option to substitute the underlined segment in the given sentence.

My friend has been a teacher since 10 years.

- Ans  1. for 10 years  
 2. till 10 years  
 3. from 10 years  
 4. within 10 years

Question ID : 26433099059  
Status : Answered  
Chosen Option : 1

Q.13 Parts of the following sentence have been given as options. Select the option that contains an error.

I told Jack that we seen a good film last week with our friends from Mexico.

- Ans
- 1. week with our
  - 2. I told Jack that we
  - 3. seen a good film last
  - 4. friends from Mexico

Question ID : 26433088468  
Status : Answered  
Chosen Option : 3

Q.14 Select the most appropriate option that can substitute the underlined segment in the given sentence. If there is no need to substitute it, select 'No substitution required'.

The purchase of computers is sure to cost more than you estimate.

- Ans
- 1. No substitution required
  - 2. is sure of cost
  - 3. is sure to costing
  - 4. is sure of costing

Question ID : 26433092110  
Status : Answered  
Chosen Option : 2

Q.15 Select the most appropriate ANTONYM of the word given in the bracket to fill in the blank.

He was absolutely (courteous)\_\_\_\_\_ to me.

- Ans
- 1. discourteous
  - 2. polite
  - 3. genteel
  - 4. solicitous

Question ID : 26433059596  
Status : Answered  
Chosen Option : 1

**Comprehension:**

In the following passage, some words have been deleted. Read the passage carefully and select the most appropriate option to fill in each blank.

Management like any other art can be learnt and developed. Management means managing all our (1)\_\_\_\_\_ - money, material, machines and most importantly, manpower. Since we can maximise (2)\_\_\_\_\_ only through people they have to be treated well. (3)\_\_\_\_\_ is the key to man-management. People can be forced to work but they have to be motivated to work well. People can be motivated as much through (4)\_\_\_\_\_ for doing their best as through timely and brief reprimands for poor performance. In order to maximise production, a manager will have to be 'tough and nice', not 'nice and tough' because everyone needs not only to be praised but also (5)\_\_\_\_\_.

**SubQuestion No : 16**

**Q.16** Select the most appropriate option to fill in blank 1.

- Ans  1. Characters  
 2. Resources  
 3. Activities  
 4. Features

Question ID : 26433092904  
Status : Answered  
Chosen Option : 2

**Comprehension:**

In the following passage, some words have been deleted. Read the passage carefully and select the most appropriate option to fill in each blank.

Management like any other art can be learnt and developed. Management means managing all our (1)\_\_\_\_\_ - money, material, machines and most importantly, manpower. Since we can maximise (2)\_\_\_\_\_ only through people they have to be treated well. (3)\_\_\_\_\_ is the key to man-management. People can be forced to work but they have to be motivated to work well. People can be motivated as much through (4)\_\_\_\_\_ for doing their best as through timely and brief reprimands for poor performance. In order to maximise production, a manager will have to be 'tough and nice', not 'nice and tough' because everyone needs not only to be praised but also (5)\_\_\_\_\_.

**SubQuestion No : 17**

**Q.17** Select the most appropriate option to fill in blank 2.

- Ans  1. complexity  
 2. richness  
 3. productivity  
 4. affection

Question ID : 26433092905  
Status : Answered  
Chosen Option : 3

**Comprehension:**

In the following passage, some words have been deleted. Read the passage carefully and select the most appropriate option to fill in each blank.

Management like any other art can be learnt and developed. Management means managing all our (1)\_\_\_\_\_ - money, material, machines and most importantly, manpower. Since we can maximise (2)\_\_\_\_\_ only through people they have to be treated well. (3)\_\_\_\_\_ is the key to man-management. People can be forced to work but they have to be motivated to work well. People can be motivated as much through (4)\_\_\_\_\_ for doing their best as through timely and brief reprimands for poor performance. In order to maximise production, a manager will have to be 'tough and nice', not 'nice and tough' because everyone needs not only to be praised but also (5)\_\_\_\_\_.

**SubQuestion No : 18**

**Q.18 Select the most appropriate option to fill in blank 3.**

- Ans
- 1. Mindfulness
  - 2. Observation
  - 3. Motivation
  - 4. Preservation

Question ID : 26433092906  
Status : Answered  
Chosen Option : 3

**Comprehension:**

In the following passage, some words have been deleted. Read the passage carefully and select the most appropriate option to fill in each blank.

Management like any other art can be learnt and developed. Management means managing all our (1)\_\_\_\_\_ - money, material, machines and most importantly, manpower. Since we can maximise (2)\_\_\_\_\_ only through people they have to be treated well. (3)\_\_\_\_\_ is the key to man-management. People can be forced to work but they have to be motivated to work well. People can be motivated as much through (4)\_\_\_\_\_ for doing their best as through timely and brief reprimands for poor performance. In order to maximise production, a manager will have to be 'tough and nice', not 'nice and tough' because everyone needs not only to be praised but also (5)\_\_\_\_\_.

**SubQuestion No : 19**

**Q.19 Select the most appropriate option to fill in blank 4.**

- Ans
- 1. pampering
  - 2. penalty
  - 3. power
  - 4. praise

Question ID : 26433092907  
Status : Answered  
Chosen Option : 4

**Comprehension:**

In the following passage, some words have been deleted. Read the passage carefully and select the most appropriate option to fill in each blank.

Management like any other art can be learnt and developed. Management means managing all our (1)\_\_\_\_\_ - money, material, machines and most importantly, manpower. Since we can maximise (2)\_\_\_\_\_ only through people they have to be treated well. (3)\_\_\_\_\_ is the key to man-management. People can be forced to work but they have to be motivated to work well. People can be motivated as much through (4)\_\_\_\_\_ for doing their best as through timely and brief reprimands for poor performance. In order to maximise production, a manager will have to be 'tough and nice', not 'nice and tough' because everyone needs not only to be praised but also (5)\_\_\_\_\_.

**SubQuestion No : 20**

**Q.20** Select the most appropriate option to fill in blank 5.

- Ans
- 1. emphasised
  - 2. disappointed
  - 3. reprimanded
  - 4. commanded

Question ID : 26433092908

Status : Answered

Chosen Option : 3

Section : Part-D-Hindi

**Q.1** 'आज खेत में एक विषधर देखा वह बहुत ही खतरनाक \_\_\_\_\_ था।' 'साँप' के पर्याय से उक्त वाक्य के रिक्त स्थान की पूर्ति कीजिए।

- Ans
- 1. केशरी
  - 2. सारंग
  - 3. भुजंग
  - 4. नाराच

Question ID : 26433084986

Status : Not Answered

Chosen Option : --

**Q.2** विधवा स्त्री हिंदू समाज की सबसे दयनीय प्राणी है और \_\_\_\_\_ स्त्री हर रीति-रिवाज को निभाने की अधिकारिणी। 'विधवा' के विलोम शब्द से उक्त वाक्य के रिक्त स्थान की पूर्ति करें।

- Ans
- 1. सुलक्षणा
  - 2. सधवा
  - 3. सौभाग्यशालिनी
  - 4. सबला

Question ID : 26433080870

Status : Not Answered

Chosen Option : --

Q.3 'शराब पीनी बुरी आदत है।' इस वाक्य में अशुद्ध शब्द है-

- Ans  1. पीनी  
 2. शराब  
 3. आदत  
 4. बुरी

Question ID : 26433066796  
Status : Not Answered  
Chosen Option : --

Q.4 निम्न में से कौन-सा शब्द समूह 'तालाब' शब्द का पर्यायवाची समूह नहीं है?

- Ans  1. तड़ाग, सर, सरोवर  
 2. सर, तड़ाग, पुष्कर  
 3. सरिता, हिम, सागर  
 4. जलाशय, पुष्कर, सरोवर

Question ID : 26433067071  
Status : Not Answered  
Chosen Option : --

Q.5 जो शब्द क्रिया की विशेषता बताएं उन्हें कहते हैं-

- Ans  1. विशेषण  
 2. समुच्चयबोधक  
 3. सर्वनाम  
 4. क्रिया विशेषण

Question ID : 26433085044  
Status : Not Answered  
Chosen Option : --

Q.6 निम्नलिखित वाक्य में रेखांकित खंड के स्थान पर प्रयुक्त होने वाले सबसे उपयुक्त विकल्प का चयन कीजिए।  
आँचल ने सबकी नाक में द्राम कर रखा है।

- Ans  1. मूल्य  
 2. दम  
 3. बाम  
 4. कीमत

Question ID : 26433079567  
Status : Not Answered  
Chosen Option : --

Q.7 निम्न वाक्यांश के लिए सार्थक शब्द/सही विकल्प चुनें।  
जो सब कुछ जानता है

- Ans  1. सामंत  
 2. सर्वज्ञ  
 3. सर्वस्व  
 4. सर्वसर्वा

Question ID : 26433066929  
Status : Not Answered  
Chosen Option : --

Q.8 'थाली का बैगन होना' मुहावरे का सही अर्थ है -

- Ans  1. जल्दी दोस्त बन जाना  
 2. इधर उधर की बातें करना  
 3. बैगन की सब्जी बनाना  
 4. सिद्धांतहीन व्यक्ति होना

Question ID : 26433065924  
Status : Not Answered  
Chosen Option : --

Q.9 निम्नलिखित में से 'सर्वनाम' सम्बन्धी अशुद्धि वाले वाक्य की पहचान कीजिये-

- Ans  1. कृपया आप जल्दी आयें।  
 2. मैं सदैव समय पर कार्यालय जाता हूँ।  
 3. तुम तुम्हारा काम करो।  
 4. रमा तुम्हें विद्यालय पहुँचा देगी।

Question ID : 26433063005  
Status : Not Answered  
Chosen Option : --

Q.10 निम्न वाक्यांश के लिए एक शब्द क्या होगा?  
जो स्मरण करने योग्य है

- Ans  1. स्मरणीय  
 2. पूजनीय  
 3. अनुकरणीय  
 4. गवेषणीय

Question ID : 26433070098  
Status : Not Answered  
Chosen Option : --



Q.11 'रोहन रात में भोजन नहीं खाता।'  
उपरोक्त वाक्य के किस भाग में अशुद्धि है?

- Ans  1. भोजन  
 2. नहीं खाता।  
 3. रात में  
 4. रोहन

Question ID : 26433092142  
Status : Not Answered  
Chosen Option : --

Q.12 "अजय की बुद्धि भ्रष्ट हो गई है।"  
उक्त वाक्य में प्रयुक्त 'बुद्धि' के स्थान पर उसके समानार्थी शब्द का प्रयोग निम्न में से किस वाक्य में नहीं किया गया है?

- Ans  1. अजय की अक्ल भ्रष्ट हो गई है।  
 2. अजय की विधु भ्रष्ट हो गई है।  
 3. अजय की मति भ्रष्ट हो गई है।  
 4. अजय की समझ भ्रष्ट हो गई है।

Question ID : 26433067032  
Status : Not Answered  
Chosen Option : --

Q.13 ' \_\_\_\_\_ पोछना' इस मुहावरे को पूरा करें।

- Ans  1. हाथ  
 2. आँसू  
 3. कान  
 4. पैर

Question ID : 26433066814  
Status : Not Answered  
Chosen Option : --

Q.14 निम्नलिखित विकल्पों में से 'परम्परा से सुना हुआ' वाक्यांश के लिए एक सार्थक शब्द क्या होगा?

- Ans  1. आनुश्राविक  
 2. वन्दनीय  
 3. आशातीत  
 4. कर्णप्रिय

Question ID : 26433062471  
Status : Not Answered  
Chosen Option : --

Q.15 निम्नलिखित में से शुद्ध वाक्य का चयन कीजिये-

- Ans  1. तमाम देश भर में यह बात फैल गई।  
 2. तमाम देश भर में फैल गई है बात।  
 3. देशभर में यह बात फैल गयी।  
 4. देशभर में यह बात फैली गई।

Question ID : 26433062824

Status : Not Answered

Chosen Option : --

**Comprehension:**

निम्न गद्यांश के आधार पर प्रश्न संख्या 1-5 के उत्तर दीजिए।  
बच्चों पर ही 1. \_\_\_\_\_ निर्भर है और वही हमारी 2. \_\_\_\_\_ हैं। इसलिए आज संसार में 3. \_\_\_\_\_ की मनोवृत्ति और विचार शैली को शिक्षा द्वारा बदलने का प्रयास किया जा रहा है। यदि हमें 4. \_\_\_\_\_ की चिन्ता है, तो हमें 5. \_\_\_\_\_ की भी चिन्ता करनी होगी।

SubQuestion No : 16

Q.16 गद्यांश में रिक्त स्थान 1 की पूर्ति के लिए सबसे उपयुक्त विकल्प का चयन विकल्पों में से कीजिए।

- Ans  1. भविष्य  
 2. वर्तमान  
 3. ब्रह्मांड  
 4. भूत

Question ID : 26433092001

Status : Not Answered

Chosen Option : --

**Comprehension:**

निम्न गद्यांश के आधार पर प्रश्न संख्या 1-5 के उत्तर दीजिए।  
बच्चों पर ही 1. \_\_\_\_\_ निर्भर है और वही हमारी 2. \_\_\_\_\_ हैं। इसलिए आज संसार में 3. \_\_\_\_\_ की मनोवृत्ति और विचार शैली को शिक्षा द्वारा बदलने का प्रयास किया जा रहा है। यदि हमें 4. \_\_\_\_\_ की चिन्ता है, तो हमें 5. \_\_\_\_\_ की भी चिन्ता करनी होगी।

SubQuestion No : 17

Q.17 गद्यांश में रिक्त स्थान 2 की पूर्ति के लिए सबसे उपयुक्त विकल्प का चयन विकल्पों में से कीजिए।

- Ans  1. आशा  
 2. भविष्य  
 3. बेसहारा  
 4. निराशा

Question ID : 26433092002

Status : Not Answered

Chosen Option : --

**Comprehension:**

निम्न गद्यांश के आधार पर प्रश्न संख्या 1-5 के उत्तर दीजिए।  
बच्चों पर ही 1. \_\_\_\_\_ निर्भर है और वही हमारी 2. \_\_\_\_\_ हैं। इसलिए आज संसार में 3. \_\_\_\_\_ की मनोवृत्ति और विचार शैली को शिक्षा द्वारा बदलने का प्रयास किया जा रहा है। यदि हमें 4. \_\_\_\_\_ की चिन्ता है, तो हमें 5. \_\_\_\_\_ की भी चिन्ता करनी होगी।

**SubQuestion No : 18**

Q.18 गद्यांश में रिक्त स्थान 3 की पूर्ति के लिए सबसे उपयुक्त विकल्प का चयन विकल्पों में से कीजिए।

- Ans  1. बच्चों  
 2. विचार  
 3. नेता  
 4. बुजुर्गों

Question ID : 26433092003

Status : Not Answered

Chosen Option : --

**Comprehension:**

निम्न गद्यांश के आधार पर प्रश्न संख्या 1-5 के उत्तर दीजिए।  
बच्चों पर ही 1. \_\_\_\_\_ निर्भर है और वही हमारी 2. \_\_\_\_\_ हैं। इसलिए आज संसार में 3. \_\_\_\_\_ की मनोवृत्ति और विचार शैली को शिक्षा द्वारा बदलने का प्रयास किया जा रहा है। यदि हमें 4. \_\_\_\_\_ की चिन्ता है, तो हमें 5. \_\_\_\_\_ की भी चिन्ता करनी होगी।

**SubQuestion No : 19**

Q.19 गद्यांश में रिक्त स्थान 4 की पूर्ति के लिए सबसे उपयुक्त विकल्प का चयन विकल्पों में से कीजिए।

- Ans  1. ब्रह्मांड  
 2. भविष्य  
 3. भूत  
 4. वर्तमान

Question ID : 26433092004

Status : Not Answered

Chosen Option : --

**Comprehension:**

निम्न गद्यांश के आधार पर प्रश्न संख्या 1-5 के उत्तर दीजिए।  
बच्चों पर ही 1. \_\_\_\_\_ निर्भर है और वही हमारी 2. \_\_\_\_\_ हैं। इसलिए आज संसार में 3. \_\_\_\_\_ की मनोवृत्ति और विचार शैली को शिक्षा द्वारा बदलने का प्रयास किया जा रहा है। यदि हमें 4. \_\_\_\_\_ की चिन्ता है, तो हमें 5. \_\_\_\_\_ की भी चिन्ता करनी होगी।

**SubQuestion No : 20**

Q.20 गद्यांश में रिक्त स्थान 5 की पूर्ति के लिए सबसे उपयुक्त विकल्प का चयन विकल्पों में से कीजिए।

- Ans  1. कल्याण  
 2. बच्चों  
 3. बुजुर्गों  
 4. प्रौढ़ों

Question ID : 26433092005

Status : Not Answered

Chosen Option : --

## Constable GD in CAPFs SSF Rifleman GD in Assam Rifles and Sepoy in NCB Examination 2022

Roll Number	@Qmaths Telegram Channel
Candidate Name	@Qmaths Telegram Channel
Venue Name	ION Digital Zone iDZ 2 Bhauti
Exam Date	13/02/2023
Exam Time	9:00 AM - 10:00 AM
Subject	Constable GD Examination 2022

Section : **Part-A-General Intelligence and Reasoning**

**Q.1** Which figure should replace the question mark (?) if the series were to be continued?

L P	D	3	L □	
D 3 □	L P □	P □	D 3	?
□	3	D L	P	

Ans

✓ 1.

P		
D	L	3
		□

✗ 2.

P		
3	L	D
		□

✗ 3.

P		
D		3
	□	L

✗ 4.

L	D	
P		□
		3

Question ID : 26433076642  
Status : Answered  
Chosen Option : 4

**Q.2** Which two numbers(not digits), from the given options, should be interchanged to make the given equation correct?  
 $(200 - 6) \div 14 \times 2 - 8 = 24 \div 4 \times 25 \div 5$

- Ans**
- 1. 6 and 4
  - 2. 8 and 2
  - 3. 24 and 14
  - 4. 6 and 8

Question ID : 26433082480  
Status : Answered  
Chosen Option : 1

**Q.3** Three statements are given, followed by three conclusions numbered I, II and III. Assuming the statements to be true, even if they seem to be at variance with commonly known facts, decide which of the conclusions logically follow(s) from the statements.

**Statements:**

All bags are sticks.

All trees are papers.

Some sticks are papers.

**Conclusions:**

I. Some sticks are trees.

II. Some papers are trees.

III. No bags are papers.

- Ans**
- 1. All conclusions follow
  - 2. Only conclusions I and III follow
  - 3. Only conclusion II follows
  - 4. Only conclusion III follows

Question ID : 26433090995  
Status : Answered  
Chosen Option : 3

**Q.4** In a certain code language, 'SHAKE' is written as 'HKSAE', 'RIVER' is written as 'RRVEI', how will 'OCEAN' be written as in that language?

- Ans**
- 1. AEOCN
  - 2. EACNO
  - 3. CNOEA
  - 4. CNAEO

Question ID : 26433069653  
Status : Answered  
Chosen Option : 4

**Q.5** Which of the following numbers will replace the question mark (?) in the given series?  
8, 18, 32, ?, 72, 98

- Ans**
- 1. 50
  - 2. 40
  - 3. 46
  - 4. 54

Question ID : 26433076739  
Status : Answered  
Chosen Option : 1

**Q.6** Select the option that is related to the third word in the same way as the second word is related to the first word.

(The words must be considered as meaningful English words and must not be related to each other based on the number of letters/number of consonants/vowels in the word)

Up : Down :: Backward : ?

- Ans
- 1. Forward
  - 2. Straighten
  - 3. Lift
  - 4. Low

Question ID : 26433067975  
Status : Answered  
Chosen Option : 1

**Q.7** 'A + B' means 'A is the brother of B'

'A - B' means 'A is the wife of B'

'A × B' means 'A is the son of B'

'A ÷ B' means 'A is the husband of B'

If  $P + Q - S + R \times L \div M$ , then which of the following statements is correct?

- Ans
- 1. Q is the sister of M.
  - 2. P is S's wife's brother.
  - 3. L is the father of P.
  - 4. P is the brother of S.

Question ID : 26433069661  
Status : Answered  
Chosen Option : 2

**Q.8** Select the letter-cluster from among the given options that can replace the question mark (?) in the following series.

JDZW, NWDA, RPHE, ?, ZBPM

- Ans
- 1. VILI
  - 2. VTHX
  - 3. TVSG
  - 4. TYID

Question ID : 26433074746  
Status : Answered  
Chosen Option : 1

**Q.9** Select the option that is related to the fourth term in the same way as the first term is related to the second term and the fifth term is related to the sixth term.

256 : 15 :: ? : 17 :: 1225 : 34

- Ans
- 1. 361
  - 2. 324
  - 3. 289
  - 4. 225

Question ID : 26433074547  
Status : Answered  
Chosen Option : 2

Q.10 Which two signs should be interchanged to make the below equation mathematically correct?

$$104 \div 8 - 24 \times 5 + 9 = 34$$

- Ans
- 1. + and ÷
  - 2. - and +
  - 3. + and ×
  - 4. ÷ and ×

Question ID : 264330117518  
Status : Answered  
Chosen Option : 3

Q.11 Select the option that is related to the third word in the same way as the second word is related to the first word.  
(The words must be considered as meaningful English words and must not be related to each other based on the number of letters/number of consonants/vowels in the word)

Vocal cord : Singer :: Feet : ?

- Ans
- 1. Scientist
  - 2. Doctor
  - 3. Footballer
  - 4. Teacher

Question ID : 26433079467  
Status : Answered  
Chosen Option : 3

Q.12 Which option represents the correct order of the given words as they would appear in the English dictionary?

- 1 inside
- 2 insert
- 3 insist
- 4 inert
- 5 investigate

- Ans
- 1. 1,2,3,4,5
  - 2. 4,1,2,3,5
  - 3. 4,3,1,2,5
  - 4. 4,2,1,3,5

Question ID : 26433069290  
Status : Answered  
Chosen Option : 4

Q.13 Which of the following numbers will replace the question mark (?) in the given series?  
96, 90, ?, 60, 36, 6

- Ans
- 1. 84
  - 2. 72
  - 3. 78
  - 4. 70

Question ID : 26433069391  
Status : Answered  
Chosen Option : 3

**Q.14** In a certain code language, 'PEOPLE' is written as 'NOEMEL' and 'TABLES' is written as 'RBAISE'. How will 'MATURE' be written in the same code language?

- Ans**
- 1. KTARER
  - 2. LATMRE
  - 3. JATRER
  - 4. AMRDRE

Question ID : 26433079484  
 Status : Answered  
 Chosen Option : 1

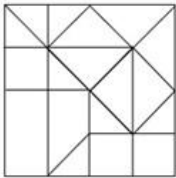
**Q.15** Select the correct mirror image of the given figure when the mirror is placed at MN as shown below.



- Ans**
- 1. 2θ2sɾɹ27U
  - 2. 2θ2sɾɹ56U
  - 3. 2θ2sɾɹ56U
  - 4. 2θ2sɾɹ56U

Question ID : 26433089459  
 Status : Answered  
 Chosen Option : 3

**Q.16** Select the option figure that is embedded in the given figure (rotation is NOT allowed).



- Ans**
- 1.
  - 2.
  - 3.
  - 4.

Question ID : 26433069483  
 Status : Answered  
 Chosen Option : 1



Q.17 Six students are sitting around a circular table facing the centre. Sam is sitting second to the right of Krish. Vishal is sitting second to the right of Sam. Savio is sitting third to the right of Sam. Michelle is the immediate neighbour of Sam and Krish. Dixon is sitting third to the right of Krish. Who is sitting between Vishal and Krish?

- Ans
- 1. Savio
  - 2. Dixon
  - 3. Sam
  - 4. Michelle

Question ID : 26433081777  
Status : Answered  
Chosen Option : 1

Q.18 Six boys M, G, V, A, R and D are standing in a straight line facing towards North. Only three boys are standing to the left of G. M is standing at the second position from the left end. Only D is standing between G and A. Who is standing at the second position from the extreme right end?

- Ans
- 1. R
  - 2. D
  - 3. V
  - 4. A

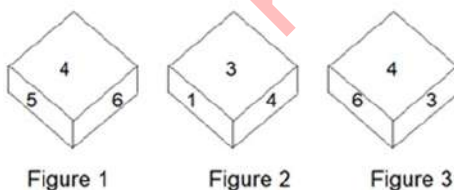
Question ID : 26433079061  
Status : Answered  
Chosen Option : 2

Q.19 Which letter-cluster will replace the question mark (?) to complete the given series?  
RQPS, NMLO, JIHK, ?, BAZC

- Ans
- 1. GFEH
  - 2. GEFH
  - 3. FDEG
  - 4. FEDG

Question ID : 26433067718  
Status : Answered  
Chosen Option : 4

Q.20 Three different positions of the same dice are shown. Find the number on the face opposite the face having '2'.



- Ans
- 1. 3
  - 2. 4
  - 3. 1
  - 4. 6

Question ID : 26433089454  
Status : Answered  
Chosen Option : 2

Q.1 The honour of Sangeet Natak Akademi Fellowship carries \_\_\_\_\_.

- Ans
- 1. Rs.1,00,000/- (Rupees One lakh) along with a Tamrapatra and Angavastram
  - 2. Rs.5,00,000/- (Rupees five lakh)
  - 3. Rs.3,00,000/- (Rupees three lakh) along with a Tamrapatra and Angavastram
  - 4. Rs.1,00,000/- (Rupees One lakh)

Question ID : 264330115892  
Status : Marked For Review  
Chosen Option : 1

Q.2 Mawsynram in the \_\_\_\_\_ of the Khasi Hills receives the highest average rainfall in the world.

- Ans
- 1. Southern part
  - 2. Northern part
  - 3. Western part
  - 4. Eastern part

Question ID : 26433091489  
Status : Marked For Review  
Chosen Option : 1

Q.3 \_\_\_\_\_, established in 1829, is the oldest golf club in India and the first outside Great Britain.

- Ans
- 1. East Point Golf Club
  - 2. The Bangalore Golf Club
  - 3. The Royal Calcutta Golf Club
  - 4. Cosmopolitan Club

Question ID : 26433089936  
Status : Marked For Review  
Chosen Option : 3

Q.4 The Legislative Council of a state assembly \_\_\_\_\_ of the total number of members in the legislative of the state and in no case fewer than 40 members.

- Ans
- 1. one-eighth
  - 2. one-tenth
  - 3. one-sixth
  - 4. one-third

Question ID : 26433086862  
Status : Answered  
Chosen Option : 2

Q.5 Mahavir Jayanti is celebrated in the month of \_\_\_\_\_.

- Ans
- 1. August-September
  - 2. March-April
  - 3. November-December
  - 4. May-June

Question ID : 264330115097  
Status : Not Answered  
Chosen Option : --

Q.6 \_\_\_\_\_ banks are owned by their customers and follow the cooperative principle of one person, one vote.

- Ans
- 1. State
  - 2. Nationalised
  - 3. Cooperative
  - 4. Scheduled

Question ID : 264330115305  
Status : Answered  
Chosen Option : 3

Q.7 Which of the following state hosted the Khelo India Youth Games 2021?

- Ans
- 1. Haryana
  - 2. Punjab
  - 3. Maharashtra
  - 4. Madhya Pradesh

Question ID : 264330115916  
Status : Answered  
Chosen Option : 1

Q.8 What is conversion of oil to vanaspati termed as?

- Ans
- 1. pasteurization
  - 2. preservation
  - 3. homogenization
  - 4. hydrogenation

Question ID : 264330115263  
Status : Answered  
Chosen Option : 4

Q.9 Solid Carbon dioxide is commonly called as \_\_\_\_\_.

- Ans
- 1. heavy water
  - 2. dry ice
  - 3. aspirin
  - 4. table sugar

Question ID : 264330115156  
Status : Answered  
Chosen Option : 2

Q.10 Who among the following was appointed as the new Chief of Defence Staff in September 2022?

- Ans
- 1. Ajay Singh
  - 2. Bipin Rawat
  - 3. Manoj Pande
  - 4. Anil Chauhan

Question ID : 264330114921  
Status : Answered  
Chosen Option : 4

Q.11 Which of the following city was the capital of the Pandyas?

- Ans
- 1. Kallupatti
  - 2. Kariapatti
  - 3. Madurai
  - 4. Palamedu

Question ID : 26433085217  
Status : Answered  
Chosen Option : 3

Q.12 Which article of the Indian Constitution deals with the fundamental duties?

- Ans
- 1. 51A
  - 2. 50
  - 3. 53A
  - 4. 52

Question ID : 264330115623  
Status : Answered  
Chosen Option : 1

Q.13 Which of the following forms an asset for a bank?

- I. Reserves
- II. Loans

- Ans
- 1. Only I
  - 2. Both I and II
  - 3. Neither I nor II
  - 4. Only II

Question ID : 26433054801  
Status : Answered  
Chosen Option : 1

Q.14 Where was the Communist Party of India (CPI) founded, in 1920?

- Ans
- 1. Andijan
  - 2. Bukhara
  - 3. Tashkent
  - 4. Namangan

Question ID : 264330115712  
Status : Not Answered  
Chosen Option : --

Q.15 Which among the following folk dances is popularly known as the 'stick dance'?

- Ans
- 1. Kolannalu
  - 2. Ghodemodni
  - 3. Theyyam
  - 4. Koli

Question ID : 264330115070  
Status : Not Answered  
Chosen Option : --

Q.16 Trade agreement between two parties is called:

- Ans  1. bilateral  
 2. multilateral  
 3. tripartite  
 4. unilateral

Question ID : 264330115385  
Status : Answered  
Chosen Option : 1

Q.17 Who took over as the Chief Executive Officer of National Institution for Transforming India (NITI) Aayog in July 2022?

- Ans  1. Narendra Singh Tomar  
 2. Parameswaran Iyer  
 3. Ajay Dhyani  
 4. Arvind Virmani

Question ID : 264330115008  
Status : Marked For Review  
Chosen Option : 2

Q.18 \_\_\_\_\_ are promoted throughout the country to save energy.

- Ans  1. Compact fluorescent lamps  
 2. Light emitting diode lamps  
 3. Incandescent bulb  
 4. Oil lamps

Question ID : 264330115552  
Status : Answered  
Chosen Option : 2

Q.19 The Consumer Protection Act provides for a \_\_\_\_\_ tier Consumer Disputes Redressal Agencies in India.

- Ans  1. three  
 2. one  
 3. two  
 4. four

Question ID : 264330116238  
Status : Not Answered  
Chosen Option : --

Q.20 Agriculture and fishing activities belong to which sector?

- Ans  1. Organized sector  
 2. Tertiary sector  
 3. Primary sector  
 4. Secondary sector

Question ID : 264330116090  
Status : Answered  
Chosen Option : 3

Q.1 The store price of a chair is Rs.2,000. The successive discounts offered by the store is 10% and 15%. Calculate the total discount percentage for the chair.

- Ans
- 1. 10.25%
  - 2. 15.30%
  - 3. 12.50%
  - 4. 23.50%

Question ID : 26433075234  
Status : Answered  
Chosen Option : 4

Q.2 A, B and C can finish a work in 10, 15 and 30 days, respectively. In how many days can A finish the work if he is assisted by B and C both every third day?

- Ans
- 1.  $9\frac{1}{2}$
  - 2. 10
  - 3.  $9\frac{1}{3}$
  - 4. 8

Question ID : 26433090265  
Status : Answered  
Chosen Option : 4

Q.3 The population of bacteria in a culture prepared in a lab is  $8 \times 10^8$ . Their birth and death rates per hour are 12.75% and 10.75% respectively. Find their population in the culture after 3 h.

- Ans
- 1. 84,89,66,400
  - 2. 84,89,44,600
  - 3. 8,48,96,640
  - 4. 8,48,96,460

Question ID : 26433075919  
Status : Answered  
Chosen Option : 1

Q.4 The marked price of a book is ₹600. After allowing a discount of 20% on the marked price, shopkeeper makes profit of ₹48. Find the gain percent.

- Ans
- 1. 5.5%
  - 2. 11.22%
  - 3. 11.11%
  - 4. 33.33%

Question ID : 26433092145  
Status : Answered  
Chosen Option : 3

Q.5 By selling a plot of land for ₹5,45,000 a person loses 8%. At what price should he sell it to gain 12%?

- Ans
- 1. ₹6,60,012.30
  - 2. ₹5,62,391.30
  - 3. ₹6,63,478.25
  - 4. ₹6,66,667.25

Question ID : 26433076268  
Status : Answered  
Chosen Option : 3

Q.6 Mohi and Suniti working separately can do a work in 12 and 15 days, respectively. Mohi starts the work and they work on alternate days. In how many days will the work be completed?

- Ans
- 1.  $16\frac{1}{4}$  days
  - 2.  $14\frac{1}{4}$  days
  - 3.  $13\frac{1}{4}$  days
  - 4.  $12\frac{1}{4}$  days

Question ID : 26433080199  
Status : Answered  
Chosen Option : 3

Q.7 How many hours will a car take to cover a distance of 354 kms at a speed of 59 km/h?

- Ans
- 1. 4
  - 2. 7
  - 3. 6
  - 4. 5

Question ID : 26433075077  
Status : Answered  
Chosen Option : 3

Q.8 If the cost price and the selling price of an article are Rs.1,850 and Rs.1,480 respectively, then what is the loss percentage?

- Ans
- 1. 20%
  - 2. 18%
  - 3. 25%
  - 4. 15%

Question ID : 26433075653  
Status : Answered  
Chosen Option : 1

**Q.9** A thief is spotted by a policeman from a distance of 100 m. When the policeman starts the chase, the thief also starts running. If the speed of the thief is 8 km/h and that of the policeman is 10 km/h, how far will the thief have run before he is overtaken?

- Ans  1. 400 m  
 2. 300 m  
 3. 250 m  
 4. 350 m

Question ID : 26433075161  
Status : Answered  
Chosen Option : 1

**Q.10** A solid metallic hemisphere is melted and recast in the shape of a cone with the same base radius ( $r$ ) as that of the hemisphere. If  $h$  is the height of the cone, then the ratio of  $r$  and  $h$  is:

- Ans  1. 2 : 1  
 2. 1 : 2  
 3.  $1 : \sqrt{3}$   
 4.  $\sqrt{3} : 1$

Question ID : 26433087411  
Status : Answered  
Chosen Option : 2

**Q.11** The HCF of  $\frac{3}{4}$ ,  $\frac{7}{8}$  and  $\frac{9}{20}$  is:

- Ans  1.  $\frac{1}{50}$   
 2.  $\frac{1}{40}$   
 3.  $\frac{1}{20}$   
 4.  $\frac{1}{30}$

Question ID : 26433079820  
Status : Answered  
Chosen Option : 2

**Q.12** The ratio between two numbers is 3:5. If the LCM of these numbers is 240, then what are the two numbers?

- Ans  1. 48 and 80  
 2. 42 and 88  
 3. 48 and 88  
 4. 36 and 94

Question ID : 26433075665  
Status : Answered  
Chosen Option : 1



Q.13 The numerator of a fraction is decreased by 25% and the denominator is increased by 25%. New fraction is how much percentage less than the original fraction?

- Ans
- 1. 45%
  - 2. 25%
  - 3. 40%
  - 4. 50%

Question ID : 26433091903  
Status : Answered  
Chosen Option : 3

Q.14

Out of a grain stock,  $\frac{1}{8}$  portion is rotten. What is the percentage of grain in the stock that is NOT rotten?

- Ans
- 1. 90%
  - 2. 77.5%
  - 3. 75%
  - 4. 87.5%

Question ID : 26433071250  
Status : Answered  
Chosen Option : 4

Q.15 The ratio of third proportional to X and Y and fourth proportional to X, Y and Z is 7 : 22, then the ratio Z : Y is:

- Ans
- 1. 22 : 7
  - 2. 1 : 5
  - 3. 49 : 484
  - 4. 7 : 22

Question ID : 26433081474  
Status : Answered  
Chosen Option : 1

Q.16 The average weight of 18 students in a class increases by 3.5 kg when one student weighing 45 kg is replaced by a new student. What is the weight (in kg) of the new student?

- Ans
- 1. 582
  - 2. 507
  - 3. 108
  - 4. 723

Question ID : 26433079997  
Status : Answered  
Chosen Option : 3

Q.17 The sum of the present ages of X, Y and Z is 165 years. Five years ago, the ratio of their ages was 3 : 5 : 7. What is the present average age of X and Z?

- Ans
- 1. 75 years
  - 2. 55 years
  - 3. 45 years
  - 4. 70 years

Question ID : 26433075433  
Status : Answered  
Chosen Option : 2

Q.18 A sum of Rs.6,000 was deposited for 3 years at 5% per annum, interest compounded annually. Find the interest for the third year.

- Ans
- 1. Rs.365.75
  - 2. Rs.330.75
  - 3. Rs.325.25
  - 4. Rs.360.25

Question ID : 26433082402  
Status : Answered  
Chosen Option : 2

Q.19 A number  $2X16$  is divided by the smallest number divisible by 4 and 9. The resultant number is the square of 9. Find the value of X.

- Ans
- 1. 3
  - 2. 5
  - 3. 7
  - 4. 9

Question ID : 264330116638  
Status : Answered  
Chosen Option : 4

Q.20 Find the volume of a cone whose radius is 10 cm and the slant height is 26 cm. (Take  $\pi = 3.14$ .)

- Ans
- 1. 2432 cm<sup>3</sup>
  - 2. 2564 cm<sup>3</sup>
  - 3. 2512 cm<sup>3</sup>
  - 4. 2498 cm<sup>3</sup>

Question ID : 26433085773  
Status : Answered  
Chosen Option : 3

Section : Part-D-English

Q.1 Select the correct spelling of the underlined word from the given options to make the sentence meaningfully correct.

I am very confidant of my positive result in the examination.

- Ans
- 1. confident
  - 2. confidance
  - 3. confidence
  - 4. confident

Question ID : 26433074063  
Status : Answered  
Chosen Option : 4

Q.2 Select the INCORRECTLY spelt word.

- Ans
- 1. Vaccenation
  - 2. Treasure
  - 3. Consonant
  - 4. Similar

Question ID : 26433073726  
Status : Answered  
Chosen Option : 1

**Q.3** Select the correct idiom that can substitute the italicised group of words in the given sentence.

My mother ensures every corner of our home is *clean and organised* before my grandmother arrives.

- Ans
- 1. root and branch
  - 2. a queer fish
  - 3. a rainy day
  - 4. spick and span

Question ID : 26433084761  
Status : Answered  
Chosen Option : 4

**Q.4** Select the most appropriate ANTONYM of the underlined word to fill in the blank.

Only one of his proposals was accepted in the meeting, while others were \_\_\_\_\_.

- Ans
- 1. fulfilled
  - 2. rejected
  - 3. attended
  - 4. agreed

Question ID : 26433089065  
Status : Answered  
Chosen Option : 2

**Q.5** Select the most appropriate ANTONYM of the given word.  
**Gratification**

- Ans
- 1. Dissatisfaction
  - 2. Growth
  - 3. Blessing
  - 4. Pleasure

Question ID : 26433092953  
Status : Answered  
Chosen Option : 1

**Q.6** Select the most appropriate ANTONYM of the given word.

**Divulgence**

- Ans
- 1. Revelation
  - 2. Assertion
  - 3. Repudiation
  - 4. Confirmation

Question ID : 26433072664  
Status : Not Attempted and Marked For Review  
Chosen Option : --

**Q.7** Select the most appropriate synonym of the underlined word in the following sentence.

They put in their sincere efforts and were lauded for their endeavours.

- Ans**
- 1. efforts
  - 2. passivity
  - 3. fun
  - 4. drop

Question ID : 26433072355  
Status : Answered  
Chosen Option : 1

**Q.8** Select the most appropriate option to fill in the blank.  
                     is the scientific study of material remains like relics and monuments of past human life.

- Ans**
- 1. Theology
  - 2. Archaeology
  - 3. Biology
  - 4. Geology

Question ID : 26433084654  
Status : Answered  
Chosen Option : 2

**Q.9** Select the most appropriate option that can substitute the underlined segment in the given sentence. If there is no need to substitute it, select 'No substitution'.

The travelling gypsies wanted to display they're skilful antics to the crowd.

- Ans**
- 1. No substitution
  - 2. there skilful antics
  - 3. dare skilful antics
  - 4. their skilful antics

Question ID : 26433088740  
Status : Answered  
Chosen Option : 4

**Q.10** Select the most appropriate synonym of the given word.

**Baffle**

- Ans**
- 1. Enlighten
  - 2. Clear
  - 3. Comprehend
  - 4. Amaze

Question ID : 26433072071  
Status : Answered  
Chosen Option : 4

**Q.11** The following sentence has been split into four segments. Identify the segment that contains a grammatical error.

My sister / is come for / a short holiday / from the US.

- Ans**
- 1. from the US
  - 2. a short holiday
  - 3. My sister
  - 4. is come for

Question ID : 26433099634  
Status : Answered  
Chosen Option : 4

**Q.12** Select the most appropriate meaning of the given idiom.

**On the fence**

- Ans**
- 1. On very intimate terms
  - 2. Undaunted by anything
  - 3. Halting between two options
  - 4. Under all conditions

Question ID : 26433073876  
Status : Answered  
Chosen Option : 3

**Q.13** Select the most appropriate synonym of the given word.

**Introvert**

- Ans**
- 1. Forward
  - 2. Outgoing
  - 3. Bold
  - 4. Shy

Question ID : 26433073687  
Status : Answered  
Chosen Option : 4

**Q.14** Select the most appropriate option that can substitute the underlined segment in the given sentence.

Shubhda has not finished to paint the window.

- Ans**
- 1. painting on
  - 2. painting of
  - 3. painting
  - 4. painting with

Question ID : 264330102391  
Status : Answered  
Chosen Option : 3

**Q.15 Select the correct pair of homonyms to fill in the blanks.**

What she \_\_\_\_\_ is that he is a \_\_\_\_\_ person.

- Ans  1. meant, mean  
 2. grown, groaned  
 3. mean, meant  
 4. growing, grown

Question ID : 26433072109  
Status : Answered  
Chosen Option : 1

**Comprehension:**

In the following passage some words have been deleted. Read the passage carefully and select the most appropriate option to fill in each blank.

The necessity of urban forest is not only to control pollution but also to (1) \_\_\_\_\_ climate change. It (2) \_\_\_\_\_ tempests as well as unforeseen drought. Off late the world is (3) \_\_\_\_\_ flash floods. The (4) \_\_\_\_\_ in Africa has put many countries in famine and children undergo severe malnutrition as a result of famine. Conferences will not provide solutions, only (5) \_\_\_\_\_ action can control these changes in global climate.

**SubQuestion No : 16**

**Q.16 Select the most appropriate option to fill in blank number 1.**

- Ans  1. hasten  
 2. control  
 3. devise  
 4. create

Question ID : 26433072749  
Status : Answered  
Chosen Option : 2

**Comprehension:**

In the following passage some words have been deleted. Read the passage carefully and select the most appropriate option to fill in each blank.

The necessity of urban forest is not only to control pollution but also to (1) \_\_\_\_\_ climate change. It (2) \_\_\_\_\_ tempests as well as unforeseen drought. Off late the world is (3) \_\_\_\_\_ flash floods. The (4) \_\_\_\_\_ in Africa has put many countries in famine and children undergo severe malnutrition as a result of famine. Conferences will not provide solutions, only (5) \_\_\_\_\_ action can control these changes in global climate.

**SubQuestion No : 17**

**Q.17 Select the most appropriate option to fill in blank number 2.**

- Ans  1. collides  
 2. confirms  
 3. contributes  
 4. prevents

Question ID : 26433072750  
Status : Answered  
Chosen Option : 4

**Comprehension:**

In the following passage some words have been deleted. Read the passage carefully and select the most appropriate option to fill in each blank.

The necessity of urban forest is not only to control pollution but also to (1) \_\_\_\_\_ climate change. It (2) \_\_\_\_\_ tempests as well as unforeseen drought. Off late the world is (3) \_\_\_\_\_ flash floods. The (4) \_\_\_\_\_ in Africa has put many countries in famine and children undergo severe malnutrition as a result of famine. Conferences will not provide solutions, only (5) \_\_\_\_\_ action can control these changes in global climate.

**SubQuestion No : 18**

**Q.18 Select the most appropriate option to fill in blank number 3.**

- Ans**  1. chasing  
 2. holding  
 3. seeing  
 4. experiencing

Question ID : 26433072751  
Status : Answered  
Chosen Option : 4

**Comprehension:**

In the following passage some words have been deleted. Read the passage carefully and select the most appropriate option to fill in each blank.

The necessity of urban forest is not only to control pollution but also to (1) \_\_\_\_\_ climate change. It (2) \_\_\_\_\_ tempests as well as unforeseen drought. Off late the world is (3) \_\_\_\_\_ flash floods. The (4) \_\_\_\_\_ in Africa has put many countries in famine and children undergo severe malnutrition as a result of famine. Conferences will not provide solutions, only (5) \_\_\_\_\_ action can control these changes in global climate.

**SubQuestion No : 19**

**Q.19 Select the most appropriate option to fill in blank number 4.**

- Ans**  1. heat  
 2. temperature  
 3. fire  
 4. drought

Question ID : 26433072752  
Status : Answered  
Chosen Option : 4

**Comprehension:**

In the following passage some words have been deleted. Read the passage carefully and select the most appropriate option to fill in each blank.

The necessity of urban forest is not only to control pollution but also to (1) \_\_\_\_\_ climate change. It (2) \_\_\_\_\_ tempests as well as unforeseen drought. Off late the world is (3) \_\_\_\_\_ flash floods. The (4) \_\_\_\_\_ in Africa has put many countries in famine and children undergo severe malnutrition as a result of famine. Conferences will not provide solutions, only (5) \_\_\_\_\_ action can control these changes in global climate.

**SubQuestion No : 20**

**Q.20 Select the most appropriate option to fill in blank number 5.**

- Ans**  1. random  
 2. rare  
 3. one-time  
 4. consistent

Question ID : 26433072753  
Status : Answered  
Chosen Option : 4

Q.1 अमंगल सूचक भय 'शक' कहलाता है। इसके एकार्थी शब्द से निम्न वाक्य पूर्ण कीजिए।  
माँ को \_\_\_\_\_ है कि शायद बेटा घर वापस न आए।

- Ans
- 1. आशंका
  - 2. भर्त्सना
  - 3. संदेशा
  - 4. भावना

Question ID : 26433063083  
Status : Not Answered  
Chosen Option : --

Q.2 निम्न वाक्य में रेखांकित अंश के स्थान पर सबसे उपयुक्त विकल्प कौन-सा होगा?  
मकान गिर जाने का संदेह है।

- Ans
- 1. उम्मीद
  - 2. संदेश
  - 3. इच्छा
  - 4. डर

Question ID : 26433072583  
Status : Not Answered  
Chosen Option : --

Q.3 नीचे दिए वाक्यांश के लिए उचित शब्द दिए गए विकल्पों में से चुनिए-  
जिसका ज्ञान इंद्रियों द्वारा न हो

- Ans
- 1. अचिंत्य
  - 2. अगोचर
  - 3. अग्रशोची
  - 4. अज्ञात

Question ID : 26433062386  
Status : Not Answered  
Chosen Option : --

Q.4 'रमेश के घर के पास एक \_\_\_\_\_ है, जिसमें से वह पानी भरता है।' इस वाक्य में रिक्त स्थान की पूर्ति  
शुद्ध शब्द द्वारा कीजिए।

- Ans
- 1. कुआँ
  - 2. कुआ
  - 3. कुवा
  - 4. कुआ

Question ID : 26433080905  
Status : Not Answered  
Chosen Option : --

Q.5 'सागर की तरह बड़ा होने का कोई महत्त्व नहीं अगर किसी की प्यास न बुझा सके।' वाक्य में प्रयुक्त  
'सागर' शब्द का पर्यायवाची शब्द नहीं है -

- Ans
- 1. जलधि
  - 2. वारिधि
  - 3. उदधि
  - 4. जगधि

Question ID : 26433069741  
Status : Not Answered  
Chosen Option : --



Q.6 निम्नलिखित में से क्या 'शादी' का समानार्थी शब्द नहीं है?

- Ans
- 1. परिणय
  - 2. विवाह
  - 3. पाणिग्रहण
  - 4. ग्रहण

Question ID : 26433085080  
Status : Not Answered  
Chosen Option : --

Q.7 कर्म करो, फल की चेष्टा मत करो।  
इस वाक्य में 'चेष्टा' के बदले कौन - सा पद उचित होगा ?

- Ans
- 1. प्रयास
  - 2. हासिल
  - 3. आशा
  - 4. प्राप्त

Question ID : 26433062696  
Status : Not Answered  
Chosen Option : --

Q.8 ' \_\_\_\_\_ का जोर लगाना' इस मुहावरे को पूरा करें।

- Ans
- 1. एड़ी चोटी
  - 2. जोर
  - 3. आमने सामने
  - 4. पहाड़ चोटी

Question ID : 26433066819  
Status : Not Answered  
Chosen Option : --

Q.9 पुंडरीक और चंपा के पुष्प बहुत सुंदर होते हैं।  
उपरोक्त वाक्य में प्रयुक्त 'पुंडरीक' शब्द का पर्यायवाची क्या है?

- Ans
- 1. बेला
  - 2. जुही
  - 3. कमल
  - 4. गुलाब

Question ID : 26433080853  
Status : Not Answered  
Chosen Option : --

Q.10 नेहा की आँखों से आँसू टपक पड़ा।  
उपरोक्त वाक्य के किस भाग में अशुद्धि है?

- Ans
- 1. नेहा की
  - 2. आँसू
  - 3. टपक पड़ा।
  - 4. आँखों से

Question ID : 26433079761  
Status : Not Answered  
Chosen Option : --

Q.11 निम्नलिखित विकल्पों में से 'खेत की मूली' मुहावरे का अर्थ क्या है?

- Ans
- 1. गणमान्य व्यक्ति
  - 2. नगण्य व्यक्ति
  - 3. शक्तिशाली व्यक्ति
  - 4. महामानवतावादी होना

Question ID : 26433062551  
Status : Not Answered  
Chosen Option : --

Q.12 निम्न वाक्यांश के एक शब्द क्या होगा?  
विष्णु का उपासक

- Ans
- 1. बांधव
  - 2. सौष्ठव
  - 3. शैव
  - 4. वैष्णव

Question ID : 26433070091  
Status : Not Answered  
Chosen Option : --

Q.13 'स्वागत \_\_\_\_\_ है।'  
उपर्युक्त वाक्य में रिक्त स्थान के लिए उपयुक्त विकल्प निम्न में से क्या होगा?

- Ans
- 1. से अभिप्राय जाने के लिए किया जाने वाला अभिवादन
  - 2. से अभिप्राय आगमन के लिए किया जाने वाला अभिवादन
  - 3. से अभिप्राय मनाने के लिए किया जाने वाला अभिवादन
  - 4. से अभिप्राय रूठकर जाने के लिए किया जाने वाला अभिवादन

Question ID : 26433067048  
Status : Not Answered  
Chosen Option : --

Q.14 निम्नलिखित में से किस वाक्य में प्रेरणार्थक क्रिया है?

- Ans
- 1. सीता राधा से पत्र पढ़वाती है।
  - 2. धर्मेंद्र पढ़कर सो गया।
  - 3. सोहन ने खाना बना लिया।
  - 4. मुझे पढ़ने दो।

Question ID : 26433085043  
Status : Not Answered  
Chosen Option : --

Q.15 निम्नलिखित विकल्पों में से कौन सा एक वाक्य क्रिया-विशेषण से सम्बन्ध रखता है?

- Ans
- 1. महिमा सो रही है।
  - 2. शेर जंगल में रहता है।
  - 3. रमण रो रहा है।
  - 4. रमेश अच्छा खेल रहा है।

Question ID : 26433062950  
Status : Not Answered  
Chosen Option : --

**Comprehension:**

निम्नलिखित गद्यांश में कुछ शब्दों को हटा दिया गया है। दिए गए विकल्पों की सहायता से रिक्त स्थानों की पूर्ति कीजिए। प्रत्येक संख्या के लिए सबसे उपयुक्त विकल्प का चयन कीजिए।  
यात्रा जीवन की 1. \_\_\_\_\_ है और रुकना एक पड़ाव। परिवारजनों अथवा मित्रों के साथ यात्रा करने का 2. \_\_\_\_\_ ही निराला है। परीक्षा समाप्त होने के 3. \_\_\_\_\_ हम चार मित्रों ने किसी पर्वतीय प्रदेश की यात्रा का निर्णय लिया। पर्वतीय प्रदेश की यात्रा के लिए गर्म कपड़ों की 4. \_\_\_\_\_ थी। परिजनों ने 5. \_\_\_\_\_ दी और समुचित धन भी दिया।

**SubQuestion No : 16****Q.16 रिक्त स्थान 1 की पूर्ति के लिए सबसे उपयुक्त विकल्प का चयन कीजिए।**

- Ans  1. नगरी  
 2. पश्चाताप  
 3. गति  
 4. मार्ग

Question ID : 264330111023  
Status : Not Answered  
Chosen Option : --

**Comprehension:**

निम्नलिखित गद्यांश में कुछ शब्दों को हटा दिया गया है। दिए गए विकल्पों की सहायता से रिक्त स्थानों की पूर्ति कीजिए। प्रत्येक संख्या के लिए सबसे उपयुक्त विकल्प का चयन कीजिए।  
यात्रा जीवन की 1. \_\_\_\_\_ है और रुकना एक पड़ाव। परिवारजनों अथवा मित्रों के साथ यात्रा करने का 2. \_\_\_\_\_ ही निराला है। परीक्षा समाप्त होने के 3. \_\_\_\_\_ हम चार मित्रों ने किसी पर्वतीय प्रदेश की यात्रा का निर्णय लिया। पर्वतीय प्रदेश की यात्रा के लिए गर्म कपड़ों की 4. \_\_\_\_\_ थी। परिजनों ने 5. \_\_\_\_\_ दी और समुचित धन भी दिया।

**SubQuestion No : 17****Q.17 रिक्त स्थान 2 की पूर्ति के लिए सबसे उपयुक्त विकल्प का चयन कीजिए।**

- Ans  1. साथ  
 2. हाल  
 3. आनंद  
 4. स्वभाव

Question ID : 264330111024  
Status : Not Answered  
Chosen Option : --

**Comprehension:**

निम्नलिखित गद्यांश में कुछ शब्दों को हटा दिया गया है। दिए गए विकल्पों की सहायता से रिक्त स्थानों की पूर्ति कीजिए। प्रत्येक संख्या के लिए सबसे उपयुक्त विकल्प का चयन कीजिए।  
यात्रा जीवन की 1. \_\_\_\_\_ है और रुकना एक पड़ाव। परिवारजनों अथवा मित्रों के साथ यात्रा करने का 2. \_\_\_\_\_ ही निराला है। परीक्षा समाप्त होने के 3. \_\_\_\_\_ हम चार मित्रों ने किसी पर्वतीय प्रदेश की यात्रा का निर्णय लिया। पर्वतीय प्रदेश की यात्रा के लिए गर्म कपड़ों की 4. \_\_\_\_\_ थी। परिजनों ने 5. \_\_\_\_\_ दी और समुचित धन भी दिया।

**SubQuestion No : 18****Q.18 रिक्त स्थान 3 की पूर्ति के लिए सबसे उपयुक्त विकल्प का चयन कीजिए।**

- Ans  1. किन्तु  
 2. स्थान  
 3. पश्चात  
 4. बीच

Question ID : 264330111025  
Status : Not Answered  
Chosen Option : --

**Comprehension:**

निम्नलिखित गद्यांश में कुछ शब्दों को हटा दिया गया है। दिए गए विकल्पों की सहायता से रिक्त स्थानों की पूर्ति कीजिए। प्रत्येक संख्या के लिए सबसे उपयुक्त विकल्प का चयन कीजिए।  
यात्रा जीवन की 1. \_\_\_\_\_ है और रुकना एक पड़ाव। परिवारजनों अथवा मित्रों के साथ यात्रा करने का 2. \_\_\_\_\_ ही निराला है। परीक्षा समाप्त होने के 3. \_\_\_\_\_ हम चार मित्रों ने किसी पर्वतीय प्रदेश की यात्रा का निर्णय लिया। पर्वतीय प्रदेश की यात्रा के लिए गर्म कपड़ों की 4. \_\_\_\_\_ थी। परिजनों ने 5. \_\_\_\_\_ दी और समुचित धन भी दिया।

**SubQuestion No : 19**

**Q.19 रिक्त स्थान 4 की पूर्ति के लिए सबसे उपयुक्त विकल्प का चयन कीजिए।**

- Ans**  1. देख-रेख  
 2. आवश्यकता  
 3. मिलावट  
 4. निराशा

Question ID : 264330111026  
Status : Not Answered  
Chosen Option : --

**Comprehension:**

निम्नलिखित गद्यांश में कुछ शब्दों को हटा दिया गया है। दिए गए विकल्पों की सहायता से रिक्त स्थानों की पूर्ति कीजिए। प्रत्येक संख्या के लिए सबसे उपयुक्त विकल्प का चयन कीजिए।  
यात्रा जीवन की 1. \_\_\_\_\_ है और रुकना एक पड़ाव। परिवारजनों अथवा मित्रों के साथ यात्रा करने का 2. \_\_\_\_\_ ही निराला है। परीक्षा समाप्त होने के 3. \_\_\_\_\_ हम चार मित्रों ने किसी पर्वतीय प्रदेश की यात्रा का निर्णय लिया। पर्वतीय प्रदेश की यात्रा के लिए गर्म कपड़ों की 4. \_\_\_\_\_ थी। परिजनों ने 5. \_\_\_\_\_ दी और समुचित धन भी दिया।

**SubQuestion No : 20**

**Q.20 रिक्त स्थान 5 की पूर्ति के लिए सबसे उपयुक्त विकल्प का चयन कीजिए।**

- Ans**  1. अनुमति  
 2. संतुलन  
 3. उत्साहित  
 4. काम

Question ID : 264330111027  
Status : Not Answered  
Chosen Option : --

# Constable GD in CAPFs SSF Rifleman GD in Assam Rifles and Sepoy in NCB Examination 2022

Roll Number	@Qmaths Telegram Channel
Candidate Name	@Qmaths Telegram Channel
Venue Name	ION Digital Zone iDZ Tehra
Exam Date	13/02/2023
Exam Time	11:45 AM - 12:45 PM
Subject	Constable GD Examination 2022

## Section : Part-A-General Intelligence and Reasoning

**Q.1** Three different positions of the same dice are shown. Find the number on the face opposite the face showing '4'.

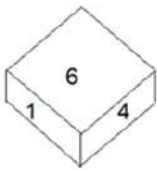


Figure 1

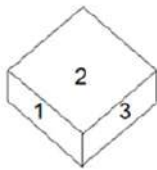


Figure 2

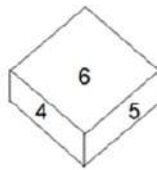


Figure 3

- Ans
- 1. 5
  - 2. 3
  - 3. 6
  - 4. 2

Question ID : 26433089455  
Status : Answered  
Chosen Option : 2

**Q.2** Which letter-cluster will replace the question mark (?) to complete the given series?  
ZYXV, UTSQ, PONL, KJIG, ?

- Ans
- 1. FDCB
  - 2. FEDB
  - 3. FEDC
  - 4. FDDB

Question ID : 26433067719  
Status : Answered  
Chosen Option : 2

**Q.3** In a certain code language, GUIDE is written as 'KWMFI', and SLICE is written as 'WNMEI'. How will 'FAITH' be written in the same code language?

- Ans
- 1. JDNVL
  - 2. JDNWL
  - 3. JCNVL
  - 4. JCMVL

Question ID : 26433067988  
Status : Answered  
Chosen Option : 4

**Q.4** Six students P,Q,R,S,T and U are sitting around a circular table facing the centre. P is sitting second to the right of Q. S is an immediate neighbour of both Q and R. U is sitting third to the left of R. T is an immediate neighbour of both P and R. Who is the immediate neighbour of P and Q?

- Ans**
- 1. S
  - 2. T
  - 3. U
  - 4. R

Question ID : 26433068865  
 Status : Answered  
 Chosen Option : 3

**Q.5** In a certain code language, 'RESULT' is written as 'LUTERS' and 'BARLEY' is written as 'ELYABR'. How will 'HEAVEN' be written in the same code language?

- Ans**
- 1. EVNEHA
  - 2. EANVHE
  - 3. VEENAH
  - 4. AEVNHA

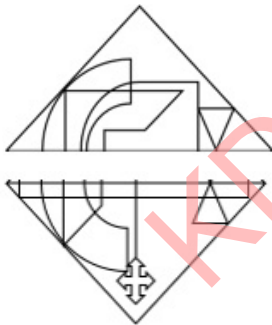
Question ID : 26433079487  
 Status : Answered  
 Chosen Option : 1

**Q.6** Select the option figure which is embedded in the given figure. (Rotation is NOT allowed).

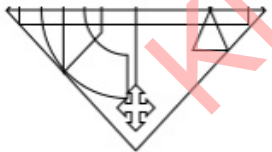


**Ans**

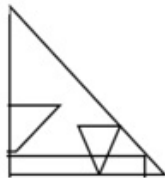
1.



2.



3.



4.



Question ID : 26433089776  
 Status : Answered  
 Chosen Option : 1

**Q.7** Select the option that is related to the third word in the same way as the second word is related to the first word.

(The words must be considered as meaningful English words and must not be related to each other based on the number of letters/number of consonants/vowels in the word)

Mango : Fruit :: Rumba : ?

- Ans
- 1. Sea
  - 2. Dance
  - 3. Tall
  - 4. Food

Question ID : 26433079483  
Status : Answered  
Chosen Option : 2

**Q.8** Which two signs should be interchanged to make the below equation mathematically correct?

$$81 + 3 \div 27 - 8 \times 24 = 25$$

- Ans
- 1. ÷ and +
  - 2. + and -
  - 3. ÷ and ×
  - 4. × and +

Question ID : 264330117533  
Status : Answered  
Chosen Option : 4

**Q.9** Which of the following numbers will replace the question mark (?) in the given series?  
198, 194, 185, ?, 144, 108

- Ans
- 1. 172
  - 2. 175
  - 3. 169
  - 4. 182

Question ID : 26433076740  
Status : Answered  
Chosen Option : 3

**Q.10** Eight girls P, Q, R, S, U, V, T and W are sitting around a circular table, facing the centre. V is sitting to the immediate left of Q and to the immediate right of U. W is sitting third to the left of V and second to the right of P. R is the immediate neighbour of P and Q. T is sitting fourth to the left of R. Who is sitting third to the left of U?

- Ans
- 1. S
  - 2. V
  - 3. P
  - 4. T

Question ID : 26433091415  
Status : Answered  
Chosen Option : 1

Q.11 Select the number from among the given options that can replace the question mark (?) in the following series.

$$\frac{1}{248}, \frac{1}{217}, \frac{1}{186}, ?, \frac{1}{124}$$

Ans

1.  $\frac{1}{179}$

2.  $\frac{1}{138}$

3.  $\frac{1}{147}$

4.  $\frac{1}{155}$

Question ID : 26433074529

Status : Answered

Chosen Option : 4

Q.12 Which two symbols, from the given options, should be interchanged to make the given equation correct?

$$(9 \div 3 + 169 \times 13) \div 5 - 10 + 16 = 206$$

Ans

1.  $\times$  and  $-$

2.  $\div$  and  $\times$

3.  $+$  and  $-$

4.  $+$  and  $\times$

Question ID : 26433082481

Status : Not Attempted and Marked For Review

Chosen Option : --

Q.13 Select the set in which the numbers are related in the same way as are the numbers of the following set.

(NOTE : Operations should be performed on the whole numbers, without breaking down the numbers into its constituent digits. E.g. 13 – Operations on 13 such as adding /subtracting/multiplying etc. to 13 can be performed. Breaking down 13 into 1 and 3 and then performing mathematical operations on 1 and 3 is NOT allowed)

(12, 87, 17)  
(19, 117, 20)

Ans

1. (13, 75, 12)

2. (8, 96, 14)

3. (11, 121, 22)

4. (15, 69, 9)

Question ID : 26433076480

Status : Not Attempted and Marked For Review

Chosen Option : --



Q.14 Select the option that is related to the fifth letter-cluster in the same way as the second letter-cluster is related to the first letter-cluster and the fourth letter-cluster is related to the third letter-cluster.

NEAR : PVZP :: GONE: ILMC :: TAXI: ?

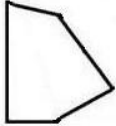
- Ans
- 1. GZCR
  - 2. RCZK
  - 3. VZCM
  - 4. VZCG

Question ID : 26433057484

Status : Answered

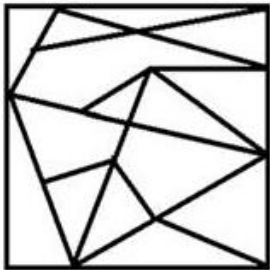
Chosen Option : 1

Q.15 Select the option figure in which the given figure is embedded (rotation is NOT allowed).

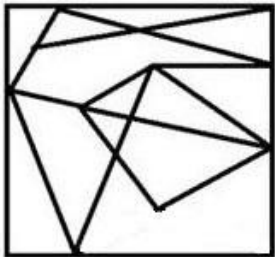


Ans

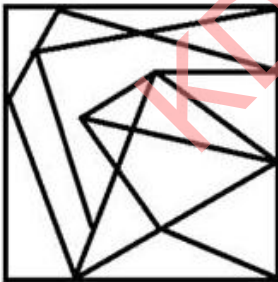
1.



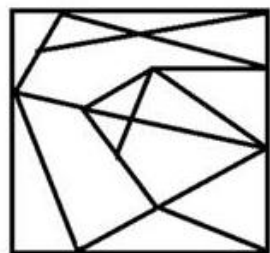
2.



3.



4.



Question ID : 26433069593

Status : Answered

Chosen Option : 3

**Q.16** Which option represents the correct order of the given words as they would appear in the English dictionary?

- 1 danger
- 2 damage
- 3 daring
- 4 darling
- 5 dark

**Ans** ✓ 1. 2,1,3,5,4

✗ 2. 2,3,1,4,5

✗ 3. 2,1,3,4,5

✗ 4. 3,1,2,4,5

Question ID : 26433069291

Status : Answered

Chosen Option : 1

**Q.17** In this question, three statements are given, followed by two conclusions numbered I and II. Assuming the statements to be true, even if they seem to be at variance with commonly known facts, decide which of the conclusions logically follows/follow from the statements.

**Statements:**

All apples are fruits.

All fruits are vegetables.

Some vegetables are fresh.

**Conclusions:**

I. All apples are fresh.

II. Some fruits are fresh.

**Ans** ✗ 1. Only conclusion I follows.

✗ 2. Only conclusion II follows.

✓ 3. Neither conclusion I nor II follows.

✗ 4. Both conclusions I and II follow.

Question ID : 26433070386

Status : Answered

Chosen Option : 3

KD Job Updates

Q.18 Find the options which is related to the third figure in the same manner as second figure is related with the first figure. (First figure is the leftmost figure.)



Ans

- 1.
- 2.
- 3.
- 4.

Question ID : 26433078858  
 Status : Answered  
 Chosen Option : 4

Q.19 In a family, there are 7 members. X and Y are a married couple. X is the father of L. M is the wife of L. C is the brother of L. C has one son O. P is the sister of O. How is C related to P?

- Ans
- 1. Father
  - 2. Son
  - 3. Father's father
  - 4. Father's brother

Question ID : 26433074598  
 Status : Answered  
 Chosen Option : 1

Q.20 Which of the following letter-clusters will replace the question mark (?) in the given series?  
 DHMO, EILN, FJKM, ?, HLIK

- Ans
- 1. GLKL
  - 2. GLJL
  - 3. GKJL
  - 4. HKJK

Question ID : 26433076437  
 Status : Answered  
 Chosen Option : 3

Q.1 'Paika' is a folk dance performed by members of the society in \_\_\_\_\_.

- Ans
- 1. Maharashtra
  - 2. Tamil Nadu
  - 3. Haryana
  - 4. Jharkhand

Question ID : 26433071664  
Status : Answered  
Chosen Option : 4

Q.2 The \_\_\_\_\_ (ABDM) aims to develop the backbone necessary to support the integrated digital health infrastructure of the country.

- Ans
- 1. Ajay Bharat Digital Mission
  - 2. Ayushman Bharat Digital Management
  - 3. Ayushman Bharat Digital Mission
  - 4. Ayushman Bharat Digital Map

Question ID : 264330116166  
Status : Answered  
Chosen Option : 3

Q.3 Which one of them is NOT a fundamental duty?

- Ans
- 1. Cherishing the ideas of national freedom struggle
  - 2. Respecting the national anthem
  - 3. Respecting the national flag
  - 4. Duty to cast your vote

Question ID : 26433089180  
Status : Answered  
Chosen Option : 1

Q.4 Ziyauddin Barani wrote his chronicle's first version in \_\_\_\_\_ year.

- Ans
- 1. 1356
  - 2. 1288
  - 3. 1358
  - 4. 1402

Question ID : 26433089124  
Status : Not Answered  
Chosen Option : --

Q.5 Dhananjaya Yashwant Chandrachud has been appointed as the \_\_\_\_\_ Chief Justice of India in October 2022.

- Ans
- 1. 30th
  - 2. 20th
  - 3. 40th
  - 4. 50th

Question ID : 264330114922  
Status : Answered  
Chosen Option : 4

**Q.6 Who has been selected as the new Chief Executive Officer of National Intelligence Grid (NATGRID) in August 2022 by the Central Government?**

- Ans**  1. Piyush Goyal  
 2. Ashish Gupta  
 3. Satya Lolla  
 4. Raghu Raman

Question ID : 264330115023  
Status : Not Answered  
Chosen Option : --

**Q.7 The festival of Ram Navami is celebrated in the Hindu month of \_\_\_\_\_.**

- Ans**  1. Kartik  
 2. Phalgun  
 3. Chaitra  
 4. Ashvin

Question ID : 264330115098  
Status : Answered  
Chosen Option : 1

**Q.8 Battle of Plassey was fought in \_\_\_\_\_.**

- Ans**  1. 1764  
 2. 1755  
 3. 1760  
 4. 1757

Question ID : 264330115701  
Status : Answered  
Chosen Option : 4

**Q.9 Which among the following articles of the Indian Constitution relates to the Attorney General of India?**

- Ans**  1. Article 76  
 2. Article 279A  
 3. Article 243ZE  
 4. Article 243I

Question ID : 26433089912  
Status : Answered  
Chosen Option : 1

**Q.10 Husk of a coconut is made of \_\_\_\_\_ tissue.**

- Ans**  1. Sclerenchyma  
 2. Collenchyma  
 3. Xylem  
 4. Parenchyma

Question ID : 264330115203  
Status : Not Answered  
Chosen Option : --

Q.11 \_\_\_\_\_ is a trade policy that doesn't restrict imports or exports.

- Ans
- 1. Fair trade
  - 2. Free trade
  - 3. Local trade
  - 4. Swiss trade

Question ID : 264330115386  
Status : Answered  
Chosen Option : 2

Q.12 Who was the first transgender to be honoured with Padma Shri?

- Ans
- 1. Karthik Chandra Rath
  - 2. Shanti Devi
  - 3. Narthaki Nataraj
  - 4. Rama Murthy

Question ID : 264330115820  
Status : Answered  
Chosen Option : 3

Q.13 Who was the host of the Asian Games 2018?

- Ans
- 1. Singapore
  - 2. India
  - 3. Indonesia
  - 4. China

Question ID : 264330115917  
Status : Answered  
Chosen Option : 4

Q.14 As a Banker to Banks, the \_\_\_\_\_ also acts as the 'lender of the last resort'.

- Ans
- 1. Nationalised bank of India
  - 2. State bank of India
  - 3. Reserve bank of India
  - 4. Union bank of India

Question ID : 264330115320  
Status : Answered  
Chosen Option : 3

Q.15 India won its last ODI Cricket world cup in which year as of 2022?

- Ans
- 1. 2011
  - 2. 2003
  - 3. 2007
  - 4. 1983

Question ID : 264330116248  
Status : Answered  
Chosen Option : 1

Q.16 The chemical reaction which involves addition of \_\_\_\_\_ or removal of \_\_\_\_\_ is called reduction.

- Ans
- 1. carbon dioxide, hydrogen
  - 2. carbon dioxide, oxygen
  - 3. hydrogen, oxygen
  - 4. oxygen, hydrogen

Question ID : 264330115157  
Status : Answered  
Chosen Option : 3

Q.17 Match the following types of industries to their examples:

- a) Agro based industry i) Hotels and Restaurants
- b) Public sector industry ii) Iron and steel industry
- c) Private sector industry iii) Silk textile
- d) Mineral based industry iv) BHEL and SAIL

- Ans
- 1. a-iv,b-iii,c-ii,d-i
  - 2. a-i,b-ii,c-iii,d-iv
  - 3. a-iv,b-ii,c-i,d-iii
  - 4. a-iii,b-iv,c-i,d-ii

Question ID : 264330115567  
Status : Not Answered  
Chosen Option : --

Q.18 Which instrument is used to measure the vibrations during an earthquake?

- Ans
- 1. Mercalli scale
  - 2. Seismograph
  - 3. Hygrometer
  - 4. Richter Scale

Question ID : 264330116003  
Status : Answered  
Chosen Option : 2

Q.19 What was the slogan of the 2011 Census of India?

- Ans
- 1. Our Census - Our Pride
  - 2. Our Census - Secured Future
  - 3. India's Census - India's Pride
  - 4. Our Census - Our Future

Question ID : 264330116029  
Status : Not Answered  
Chosen Option : --

Q.20 The Fourth Five Year Plan had began in the year \_\_\_\_\_.

- Ans
- 1. 1969
  - 2. 1966
  - 3. 1962
  - 4. 1973

Question ID : 264330116119  
Status : Not Attempted and Marked For Review  
Chosen Option : --

Q.1 The average weight of eight persons is 40 kg. If one person is removed, then the average weight becomes 38 kg. The weight of the removed person is:

- Ans  1. 38 kg  
 2. 54 kg  
 3. 33.25 kg  
 4. 78 kg

Question ID : 26433087343  
Status : Answered  
Chosen Option : 2

Q.2 The cost price of an article is 64% of the marked price. Calculate the gain percentage after allowing a discount of 20%.

- Ans  1. 35%  
 2. 25%  
 3. 30%  
 4. 20%

Question ID : 26433073015  
Status : Answered  
Chosen Option : 2

Q.3 Atul alone can complete a work in 114 days. How many persons were required with the same efficiency as Atul to complete the same work in 19 days?

- Ans  1. 7  
 2. 6  
 3. 5  
 4. 8

Question ID : 264330116850  
Status : Answered  
Chosen Option : 2

Q.4 There is a cone with diameter 14 cm and height 12 cm. It is being filled with water at a rate of  $4 \text{ cm}^3$  in every 10 s. How long will it take to fill the cone? (Use  $\pi = \frac{22}{7}$ )

- Ans  1. 616 s  
 2. 1540 s  
 3. 3080 s  
 4. 6160 s

Question ID : 26433087414  
Status : Not Attempted and Marked For Review  
Chosen Option : --

Q.5 The fourth proportional to 2 hours 40 minutes, 1 hours 20 minutes and 10 hours is:

- Ans  1. 4 hours  
 2. 6 hours  
 3. 5 hours  
 4. 2 hours

Question ID : 26433081579  
Status : Answered  
Chosen Option : 3



Q.6 The average weight of 34 persons is increased by 3 kg when one person weighing 90 kg is replaced by a new person. Weight of the new person is:

- Ans
- 1. 196 kg
  - 2. 202 kg
  - 3. 190 kg
  - 4. 192 kg

Question ID : 26433079998

Status : **Not Attempted and Marked For Review**

Chosen Option : --

Q.7 Find the difference between the digits of the greatest number that can exactly divide 144 and 216?

- Ans
- 1. 2
  - 2. 4
  - 3. 3
  - 4. 5

Question ID : 264330116639

Status : **Answered**

Chosen Option : 3

Q.8 Two persons P and Q working together can do a piece of work in 36 days. Q alone can do it in 45 days. Q alone start the work and left the work after 5 days. How many days will P take to complete the remaining work?

- Ans
- 1. 180
  - 2. 120
  - 3. 140
  - 4. 160

Question ID : 26433080229

Status : **Answered**

Chosen Option : 4

Q.9 Divide ₹ 5,309 between A and B, so that the amount of A after 4 years is equal to the amount B after 6 years, the interest being compounded at 6% per annum, compounding annually.

- Ans
- 1. ₹2,809, ₹2,500
  - 2. ₹2,759, ₹2,550
  - 3. ₹2,659, ₹2,650
  - 4. ₹2,709, ₹2,600

Question ID : 26433074299

Status : **Not Answered**

Chosen Option : --

Q.10 If the third proportion to 3 and 27 is 'x', then what would be the HCF of 'x' and 27?

- Ans
- 1. 9
  - 2. 27
  - 3. 3
  - 4. 15

Question ID : 26433076008  
Status : Answered  
Chosen Option : 2

Q.11 If  $\frac{5}{8}$  of  $184 \times 15 \div 5 + k = 513 \div 9 + 435$ , then the value of k is:

- Ans
- 1. 192
  - 2. 147
  - 3. 239
  - 4. 136

Question ID : 26433074974  
Status : Answered  
Chosen Option : 2

Q.12 In an election between two candidates, 80% of the voters cast their votes out of which 5% of votes were declared invalid. A candidate got 285000 votes which was 75% of the total valid votes. The total number of voters enrolled for that election was:

- Ans
- 1. 500000
  - 2. 450000
  - 3. 400000
  - 4. 550000

Question ID : 26433087351  
Status : Not Answered  
Chosen Option : --

Q.13 A solid hemisphere has a volume of  $1,152 \pi \text{ cm}^3$ . Find the curved surface area of the hemisphere.

- Ans
- 1.  $344 \text{ cm}^2$
  - 2.  $288 \pi \text{ cm}^2$
  - 3.  $302 \pi \text{ cm}^2$
  - 4.  $294 \text{ cm}^2$

Question ID : 26433075857  
Status : Answered  
Chosen Option : 2

Q.14 The population of a city in the beginning of 2019 was 82,000. Its population is increasing at a rate of 2% annually. What is its population (rounded off to the nearest integer) in the beginning of 2022?

- Ans
- 1. 85000
  - 2. 86789
  - 3. 88000
  - 4. 87019

Question ID : 26433075983  
Status : Answered  
Chosen Option : 1

Q.15 Shlok drives the first 140 km in 3 hrs and the next 180 km in 5 hrs. What is his average speed (in km/h) for the entire trip?

- Ans
- 1. 50
  - 2. 45
  - 3. 30
  - 4. 40

Question ID : 26433075241  
Status : Answered  
Chosen Option : 4

Q.16 A man sells rice at 10% profit and uses a weight that is 20% less than the actual measure. His gain percentage is:

- Ans
- 1.  $37\frac{2}{3}\%$
  - 2.  $37\frac{1}{2}\%$
  - 3.  $37\frac{1}{5}\%$
  - 4.  $37\frac{1}{3}\%$

Question ID : 26433075149  
Status : Answered  
Chosen Option : 3

Q.17 The selling price of a product is such that the seller earns a profit of 20% on the cost price. Determine the ratio of selling price to cost price.

- Ans
- 1.  $\frac{3}{4}$
  - 2.  $\frac{5}{6}$
  - 3.  $\frac{6}{5}$
  - 4.  $\frac{4}{3}$

Question ID : 26433071306  
Status : Answered  
Chosen Option : 3

Q.18 Marked price of an article is Rs. 1600 but Rohan gets a discount of 20 percent. He sells the article for Rs. 1600. Rohan's gain percent is:

- Ans
- 1. 18 percent
  - 2. 22 percent
  - 3. 25 percent
  - 4. 20 percent

Question ID : 264330116735  
Status : Answered  
Chosen Option : 3

**Q.19** A fruit merchant makes a profit of 25% by selling mangoes at a certain price. If he charges Rs.3 more on each mango, he will gain 40%. Find the cost price of one mango

- Ans
- 1. Rs.30
  - 2. Rs.25
  - 3. Rs.20
  - 4. Rs.15

Question ID : 26433074985

Status : **Not Attempted and Marked For Review**

Chosen Option : --

**Q.20** A boat is moving in still water at a speed of 15 km/h. The speed of the stream is 3 km/h. How much time will the boat take to cover 6 km upstream?

- Ans
- 1. 30 minutes
  - 2. 15 minutes
  - 3. 20 minutes
  - 4. 45 minutes

Question ID : 26433075986

Status : **Answered**

Chosen Option : 3

Section : **Part-D-English**

**Q.1** In the following passage, some words have been deleted. Read the passage carefully and select the most appropriate option to fill in the blanks.  
Blood transfusion is a procedure that starts with the doctor (1) \_\_\_\_\_ the patients' blood type. In case of a wrong transfusion in the immune (2) \_\_\_\_\_ of an individual, it leads to an infection.

- Ans
- 1. diagnosing; structure
  - 2. treating; process
  - 3. determining; system
  - 4. settling; order

Question ID : 26433084742

Status : **Answered**

Chosen Option : 3

**Q.2** Select the most appropriate synonym of the underlined word.

Since the last few hours his pulse rate is constant.

- Ans
- 1. Steady
  - 2. Fickle
  - 3. Pitiful
  - 4. Reflective

Question ID : 26433084682

Status : **Answered**

Chosen Option : 1

**Q.3** Select the most appropriate option to substitute the underlined segment in the given sentence to make it a meaningful sentence. If no substitution is required, select 'No substitution'.

There are hundred of superstitions that survive in various parts of the country, and the study of them is rather amusing.

- Ans**
- 1. There are hundred of superstition that survive in various parts of the country, and the study of them is rather amusing.
  - 2. There are hundred of superstition that survived in various parts of the country, and the study of them is rather amusing.
  - 3. No substitution
  - 4. There are hundreds of superstitions that survive in various parts of the country, and the study of them is rather amusing.

Question ID : 26433092043  
Status : Answered  
Chosen Option : 4

**Q.4** Select the most appropriate meaning of the given idiom.

**Wear your heart on your sleeve**

- Ans**
- 1. Imagining unreal things about others
  - 2. Wearing untidy clothes intentionally
  - 3. Spreading scandals mercilessly
  - 4. Expressing emotions very openly

Question ID : 26433073486  
Status : Answered  
Chosen Option : 4

**Q.5** Select the most appropriate **ANTONYM** of the given word.  
**Lucid**

- Ans**
- 1. Dark
  - 2. Bloat
  - 3. Jolt
  - 4. Stark

Question ID : 26433066087  
Status : Answered  
Chosen Option : 1

**Q.6** Select the most appropriate synonym of the given word.

**Valid**

- Ans**
- 1. Illicit
  - 2. Evil
  - 3. Logical
  - 4. Fake

Question ID : 26433073688  
Status : Answered  
Chosen Option : 3

Q.7 Select the most appropriate ANTONYM of the given word.

Verbose

- Ans  1. Talkative  
 2. Brief  
 3. Polished  
 4. Wordy

Question ID : 26433072665  
Status : Answered  
Chosen Option : 2

Q.8 The given sentence is divided into three segments. Select the option that has the segment with a grammatical error. If there is no error, select 'no error' as your answer.

Ameya won't / eat / any junk food at all.

- Ans  1. Ameya won't  
 2. No error  
 3. eat  
 4. any junk food at all

Question ID : 26433071859  
Status : Answered  
Chosen Option : 1

Q.9 Select the INCORRECTLY spelt word.

- Ans  1. Brandish  
 2. Covardice  
 3. Treachery  
 4. Statutory

Question ID : 26433073506  
Status : Answered  
Chosen Option : 2

Q.10 Select the most appropriate option to fill in the blank.

My uncle's legal \_\_\_\_\_ is his son.

- Ans  1. heir  
 2. hair  
 3. here  
 4. hare

Question ID : 26433073933  
Status : Answered  
Chosen Option : 1

Q.11 Select the most appropriate spelling that can correctly substitute the misspelt underlined segment in the given sentence.

The thick dirt on the building was the acretion of ages.

- Ans  1. accration  
 2. accretion  
 3. acration  
 4. acrettion

Question ID : 26433071936  
Status : Answered  
Chosen Option : 2

Q.12 Select the most appropriate option to fill in the blank.

I have made the basket for going to the picnic and I've packed some sandwiches

- Ans
- 1. two
  - 2. too
  - 3. to
  - 4. toot

Question ID : 26433084617  
Status : Answered  
Chosen Option : 2

Q.13 Select the most appropriate homonym to fill in the blank.  
The authorities \_\_\_\_\_ the unregistered companies.

- Ans
- 1. sees
  - 2. seize
  - 3. seas
  - 4. cease

Question ID : 26433058519  
Status : Answered  
Chosen Option : 2

Q.14 Select the most appropriate meaning of the given idiom.

To add fuel to fire.

- Ans
- 1. To make a bad situation worse
  - 2. To speak against someone
  - 3. To fight over trivial thing
  - 4. To start the conversation

Question ID : 26433072537  
Status : Answered  
Chosen Option : 1

Q.15 Substitute the underlined words with the option that is closest in meaning to it.

Rahul likes to keep his house spic and span.

- Ans
- 1. shabby and dirty
  - 2. neat and clean
  - 3. bright and glory
  - 4. rich and famous

Question ID : 26433088952  
Status : Answered  
Chosen Option : 2

**Comprehension:**

In the following passage some words have been deleted. Fill in the blanks with the help of the alternatives given. Select the most appropriate option for each number.

Ayurveda views a person more than bones and muscle. According to it, you are a spirit that represents the *vata*, *pitta*, and *kapha* elements. Ayurveda (1) \_\_\_\_ impacts your health by bringing an (2) \_\_\_\_ in your body, mind, and soul. By consuming healthy food according to the body's constitution, and performing yoga stretches, and meditation, you will start to see (3) \_\_\_\_ results. Ayurveda impacts the body at the deepest cellular levels. It helps in healing, and (4) \_\_\_\_ of cells, to protect it from a wide range of ailments naturally. According to Ayurveda, when a person eats wrong food, then "ama" or toxin gets deposited in the body. If this waste-product is not eliminated from the body soon, then it starts to spread in different areas of the body. This is the major reason behind experiencing an (5) \_\_\_\_ in the body.

**SubQuestion No : 16**

**Q.16** Select the most appropriate option to fill in blank 1.

- Ans  1. casually  
 2. positively  
 3. negatively  
 4. probably

Question ID : 26433073176  
Status : Answered  
Chosen Option : 2

**Comprehension:**

In the following passage some words have been deleted. Fill in the blanks with the help of the alternatives given. Select the most appropriate option for each number.

Ayurveda views a person more than bones and muscle. According to it, you are a spirit that represents the *vata*, *pitta*, and *kapha* elements. Ayurveda (1) \_\_\_\_ impacts your health by bringing an (2) \_\_\_\_ in your body, mind, and soul. By consuming healthy food according to the body's constitution, and performing yoga stretches, and meditation, you will start to see (3) \_\_\_\_ results. Ayurveda impacts the body at the deepest cellular levels. It helps in healing, and (4) \_\_\_\_ of cells, to protect it from a wide range of ailments naturally. According to Ayurveda, when a person eats wrong food, then "ama" or toxin gets deposited in the body. If this waste-product is not eliminated from the body soon, then it starts to spread in different areas of the body. This is the major reason behind experiencing an (5) \_\_\_\_ in the body.

**SubQuestion No : 17**

**Q.17** Select the most appropriate option to fill in blank 2.

- Ans  1. foundation  
 2. equilibrium  
 3. basis  
 4. substance

Question ID : 26433073177  
Status : Answered  
Chosen Option : 2



**Comprehension:**

In the following passage some words have been deleted. Fill in the blanks with the help of the alternatives given. Select the most appropriate option for each number.

Ayurveda views a person more than bones and muscle. According to it, you are a spirit that represents the *vata*, *pitta*, and *kapha* elements. Ayurveda (1) \_\_\_\_ impacts your health by bringing an (2) \_\_\_\_ in your body, mind, and soul. By consuming healthy food according to the body's constitution, and performing yoga stretches, and meditation, you will start to see (3) \_\_\_\_ results. Ayurveda impacts the body at the deepest cellular levels. It helps in healing, and (4) \_\_\_\_ of cells, to protect it from a wide range of ailments naturally. According to Ayurveda, when a person eats wrong food, then "ama" or toxin gets deposited in the body. If this waste-product is not eliminated from the body soon, then it starts to spread in different areas of the body. This is the major reason behind experiencing an (5) \_\_\_\_ in the body.

**SubQuestion No : 18**

**Q.18 Select the most appropriate option to fill in blank 3.**

Ans  1. invisible

2. gentle

3. sluggish

4. visible

Question ID : 26433073178

Status : Answered

Chosen Option : 4

**Comprehension:**

In the following passage some words have been deleted. Fill in the blanks with the help of the alternatives given. Select the most appropriate option for each number.

Ayurveda views a person more than bones and muscle. According to it, you are a spirit that represents the *vata*, *pitta*, and *kapha* elements. Ayurveda (1) \_\_\_\_ impacts your health by bringing an (2) \_\_\_\_ in your body, mind, and soul. By consuming healthy food according to the body's constitution, and performing yoga stretches, and meditation, you will start to see (3) \_\_\_\_ results. Ayurveda impacts the body at the deepest cellular levels. It helps in healing, and (4) \_\_\_\_ of cells, to protect it from a wide range of ailments naturally. According to Ayurveda, when a person eats wrong food, then "ama" or toxin gets deposited in the body. If this waste-product is not eliminated from the body soon, then it starts to spread in different areas of the body. This is the major reason behind experiencing an (5) \_\_\_\_ in the body.

**SubQuestion No : 19**

**Q.19 Select the most appropriate option to fill in blank 4.**

Ans  1. regeneration

2. benefit

3. degeneration

4. loss

Question ID : 26433073179

Status : Answered

Chosen Option : 1

**Comprehension:**

In the following passage some words have been deleted. Fill in the blanks with the help of the alternatives given. Select the most appropriate option for each number.

Ayurveda views a person more than bones and muscle. According to it, you are a spirit that represents the *vata*, *pitta*, and *kapha* elements. Ayurveda (1) \_\_\_\_\_ impacts your health by bringing an (2) \_\_\_\_\_ in your body, mind, and soul. By consuming healthy food according to the body's constitution, and performing yoga stretches, and meditation, you will start to see (3) \_\_\_\_\_ results. Ayurveda impacts the body at the deepest cellular levels. It helps in healing, and (4) \_\_\_\_\_ of cells, to protect it from a wide range of ailments naturally. According to Ayurveda, when a person eats wrong food, then "ama" or toxin gets deposited in the body. If this waste-product is not eliminated from the body soon, then it starts to spread in different areas of the body. This is the major reason behind experiencing an (5) \_\_\_\_\_ in the body.

**SubQuestion No : 20**

**Q.20** Select the most appropriate option to fill in blank 5.

- Ans**  1. weakness  
 2. potential  
 3. energy  
 4. imbalance

Question ID : 26433073180  
Status : Answered  
Chosen Option : 4

**Section : Part-D-Hindi**

**Q.1** 'वसंत ऋतु में वृक्षों में नव पल्लव आते हैं।' वाक्य में प्रयुक्त 'पल्लव' शब्द का अर्थ है-

- Ans**  1. पत्ता  
 2. डाली  
 3. फूल  
 4. शाखा

Question ID : 26433069742  
Status : Not Answered  
Chosen Option : --

**Q.2** 'कुत्ता रेंकता है।' इस वाक्य में रेखांकित शब्द के स्थान पर उपयुक्त शब्द क्या होगा?

- Ans**  1. चहचहाता  
 2. गुटरगू करता  
 3. भौंकता  
 4. मिमियाता

Question ID : 26433062779  
Status : Not Answered  
Chosen Option : --

**Q.3** 'अतिवृष्टि' का सही विलोम निम्न में से क्या है?

- Ans**  1. बाढ़  
 2. निवृष्टि  
 3. अनावृष्टि  
 4. अवृष्टि

Question ID : 26433062924  
Status : Not Answered  
Chosen Option : --

Q.4 निम्नलिखित विकल्पों में से 'साधारण या व्यापक नियम के विरुद्ध चीजें' वाक्यांश के लिए एक सार्थक शब्द क्या होगा ?

- Ans
- 1. नीरवता
  - 2. अपवाद
  - 3. अपूर्व
  - 4. आलोचक

Question ID : 26433062475  
Status : Not Answered  
Chosen Option : --

Q.5 'क्रम के अनुसार' वाक्यांश के लिए सार्थक शब्द है-

- Ans
- 1. सक्रम
  - 2. यथाक्रम
  - 3. क्रमांक
  - 4. असंख्य

Question ID : 26433065869  
Status : Not Answered  
Chosen Option : --

Q.6 निम्नलिखित वाक्य के रिक्त स्थान में सबसे उपयुक्त मुहावरा क्या होगा?  
'श्रवण कुमार अपने माता पिता के लिए \_\_\_\_\_ थे।'

- Ans
- 1. दाढ़ी में तिनका
  - 2. अंधे की लकड़ी
  - 3. काठ के उल्लू
  - 4. हाथी के दांत

Question ID : 26433066735  
Status : Not Answered  
Chosen Option : --

Q.7 वर्तनी की दृष्टि से अशुद्ध वाक्य का चयन कीजिए-

- Ans
- 1. मैं आपसे छुट्टी के लिए प्रार्थना करता हूँ।
  - 2. मैंने उसकी अस्वस्थता के बारे में सुना था।
  - 3. वह अपनी उम्र के तीसवें वर्ष तक अविवाहित था।
  - 4. राम का शत्रू रावण मारा गया।

Question ID : 26433062892  
Status : Not Answered  
Chosen Option : --

Q.8 निम्नलिखित विकल्पों में से किस एक वाक्य में क्रिया सम्बन्धी अशुद्धि है?

- Ans
- 1. चोरी करते हुए पकड़े जाने पर उस पर घड़ों पानी पड़ गया।
  - 2. वह लड़का दौड़ता है।
  - 3. दूसरों के चरित्र पर अकारण ही कीचड़ नहीं डालना चाहिए।
  - 4. कृपया उत्तर शीघ्र दें।

Question ID : 26433091233  
Status : Not Answered  
Chosen Option : --

Q.9 'साहित्य से संबंधित' वाक्यांश के लिए एक शब्द होगा-

- Ans  1. सरोकार  
 2. साहित्यिक  
 3. दर्पण  
 4. सामाजिक

Question ID : 26433065734  
Status : Not Answered  
Chosen Option : --

Q.10 अशुद्ध वर्तनी वाला वाक्य पहचानिए।

- Ans  1. बहुत भाग - दउड़ के बाद कलेज में उनका प्रवेश हुआ।  
 2. मेरी पत्नी बीमार है।  
 3. दादी की मृत्यु से हमें बड़ा शोक हुआ।  
 4. मुझे तुमसे मिलने की उत्सुकता थी।

Question ID : 26433063064  
Status : Not Answered  
Chosen Option : --

Q.11 निम्नलिखित वाक्य में रेखांकित खंड के स्थान पर प्रयुक्त होने वाले सबसे उपयुक्त विकल्प का चयन कीजिए।

उसके चाची का लड़की हुई है।

- Ans  1. से  
 2. में  
 3. को  
 4. के

Question ID : 26433079571  
Status : Not Answered  
Chosen Option : --

Q.12 निम्नलिखित विकल्पों में से किस एक वाक्य में विशेषण का उचित प्रयोग किया गया है?

- Ans  1. पानी से नहाओ।  
 2. रोज स्कूल जाओ।  
 3. मीठा फल खाओ।  
 4. खाना खाओ।

Question ID : 26433062961  
Status : Not Answered  
Chosen Option : --

Q.13 निम्नलिखित विकल्पों में से 'धुन लगना' मुहावरे का अर्थ क्या है?

- Ans  1. भय होना  
 2. निराश होना  
 3. खुश होना  
 4. क्षय होना

Question ID : 26433062552  
Status : Not Answered  
Chosen Option : --

Q.14 सृष्टि के निर्माता ब्रह्मा हैं, तो विनाशक \_\_\_\_\_ ।  
'शिव' के पर्याय से उक्त वाक्य में रिक्त स्थान की पूर्ति कीजिए।

- Ans
- 1. मार्तण्ड
  - 2. लोकेश
  - 3. विभु
  - 4. त्रिलोचन

Question ID : 26433084990  
Status : Not Answered  
Chosen Option : --

Q.15 "भिखारी को देखकर उसे उस पर \_\_\_\_\_ आ गई।"  
उपरोक्त वाक्य में रिक्त स्थान पर निम्न में से किस शब्द का प्रयोग सर्वाधिक उपयुक्त होगा?

- Ans
- 1. अनुकंपा
  - 2. माया
  - 3. कृपा
  - 4. दया

Question ID : 26433067005  
Status : Not Answered  
Chosen Option : --

**Comprehension:**

निम्नलिखित गद्यांश में कुछ शब्दों को हटा दिया गया है। दिए गए विकल्पों की सहायता से रिक्त स्थानों की पूर्ति कीजिए। प्रत्येक संख्या के लिए सबसे उपयुक्त विकल्प का चयन करें।  
संसार में सैकड़ों प्रकार के प्राणी हैं, इनमें मानव जीवन 1. \_\_\_\_\_ है। वह सोच-समझ कर 2. \_\_\_\_\_ लेता है कि उसे क्या करना चाहिए तथा उसके लिए क्या उपयोगी है जो उसे अपने 3. \_\_\_\_\_ तक पहुँचा दे। उसके जीवन की 4. \_\_\_\_\_ तभी है जब वह आकांक्षा या लक्ष्य लेकर जीवन व्यतीत करें। जीवन एक प्रकार की 5. \_\_\_\_\_ है, जहाँ नित्य नए-नए अनुभव होते हैं।

SubQuestion No : 16

Q.16 रिक्त स्थान 1 की पूर्ति के लिए सबसे उपयुक्त विकल्प का चयन कीजिए।

- Ans
- 1. प्रारंभ
  - 2. सर्वश्रेष्ठ
  - 3. अधूरा
  - 4. पूरा

Question ID : 264330111029  
Status : Not Answered  
Chosen Option : --

**Comprehension:**

निम्नलिखित गद्यांश में कुछ शब्दों को हटा दिया गया है। दिए गए विकल्पों की सहायता से रिक्त स्थानों की पूर्ति कीजिए। प्रत्येक संख्या के लिए सबसे उपयुक्त विकल्प का चयन करें।  
संसार में सैकड़ों प्रकार के प्राणी हैं, इनमें मानव जीवन 1. \_\_\_\_\_ है। वह सोच-समझ कर 2. \_\_\_\_\_ लेता है कि उसे क्या करना चाहिए तथा उसके लिए क्या उपयोगी है जो उसे अपने 3. \_\_\_\_\_ तक पहुँचा दे। उसके जीवन की 4. \_\_\_\_\_ तभी है जब वह आकांक्षा या लक्ष्य लेकर जीवन व्यतीत करें। जीवन एक प्रकार की 5. \_\_\_\_\_ है, जहाँ नित्य नए-नए अनुभव होते हैं।

SubQuestion No : 17

Q.17 रिक्त स्थान 2 की पूर्ति के लिए सबसे उपयुक्त विकल्प का चयन कीजिए।

- Ans
- 1. उपचार
  - 2. अनिवार्य
  - 3. निर्णय
  - 4. देखता

Question ID : 264330111030  
Status : Not Answered  
Chosen Option : --

**Comprehension:**

निम्नलिखित गद्यांश में कुछ शब्दों को हटा दिया गया है। दिए गए विकल्पों की सहायता से रिक्त स्थानों की पूर्ति कीजिए। प्रत्येक संख्या के लिए सबसे उपयुक्त विकल्प का चयन करें।  
संसार में सैकड़ों प्रकार के प्राणी हैं, इनमें मानव जीवन 1. \_\_\_\_\_ है। वह सोच-समझ कर 2. \_\_\_\_\_ लेता है कि उसे क्या करना चाहिए तथा उसके लिए क्या उपयोगी है जो उसे अपने 3. \_\_\_\_\_ तक पहुँचा दे। उसके जीवन की 4. \_\_\_\_\_ तभी है जब वह आकांक्षा या लक्ष्य लेकर जीवन व्यतीत करें। जीवन एक प्रकार की 5. \_\_\_\_\_ है, जहाँ नित्य नए-नए अनुभव होते हैं।

**SubQuestion No : 18**

Q.18 रिक्त स्थान 3 की पूर्ति के लिए सबसे उपयुक्त विकल्प का चयन कीजिए।

- Ans
- 1. कर्तव्य
  - 2. प्रारंभ
  - 3. लक्ष्य
  - 4. सीमा

Question ID : 264330111031  
Status : Not Answered  
Chosen Option : --

**Comprehension:**

निम्नलिखित गद्यांश में कुछ शब्दों को हटा दिया गया है। दिए गए विकल्पों की सहायता से रिक्त स्थानों की पूर्ति कीजिए। प्रत्येक संख्या के लिए सबसे उपयुक्त विकल्प का चयन करें।  
संसार में सैकड़ों प्रकार के प्राणी हैं, इनमें मानव जीवन 1. \_\_\_\_\_ है। वह सोच-समझ कर 2. \_\_\_\_\_ लेता है कि उसे क्या करना चाहिए तथा उसके लिए क्या उपयोगी है जो उसे अपने 3. \_\_\_\_\_ तक पहुँचा दे। उसके जीवन की 4. \_\_\_\_\_ तभी है जब वह आकांक्षा या लक्ष्य लेकर जीवन व्यतीत करें। जीवन एक प्रकार की 5. \_\_\_\_\_ है, जहाँ नित्य नए-नए अनुभव होते हैं।

**SubQuestion No : 19**

Q.19 रिक्त स्थान 4 की पूर्ति के लिए सबसे उपयुक्त विकल्प का चयन कीजिए।

- Ans
- 1. विफलता
  - 2. महत्त्वपूर्ण
  - 3. निश्चय
  - 4. सार्थकता

Question ID : 264330111032  
Status : Not Answered  
Chosen Option : --

**Comprehension:**

निम्नलिखित गद्यांश में कुछ शब्दों को हटा दिया गया है। दिए गए विकल्पों की सहायता से रिक्त स्थानों की पूर्ति कीजिए। प्रत्येक संख्या के लिए सबसे उपयुक्त विकल्प का चयन करें।  
संसार में सैकड़ों प्रकार के प्राणी हैं, इनमें मानव जीवन 1. \_\_\_\_\_ है। वह सोच-समझ कर 2. \_\_\_\_\_ लेता है कि उसे क्या करना चाहिए तथा उसके लिए क्या उपयोगी है जो उसे अपने 3. \_\_\_\_\_ तक पहुँचा दे। उसके जीवन की 4. \_\_\_\_\_ तभी है जब वह आकांक्षा या लक्ष्य लेकर जीवन व्यतीत करें। जीवन एक प्रकार की 5. \_\_\_\_\_ है, जहाँ नित्य नए-नए अनुभव होते हैं।

**SubQuestion No : 20**

Q.20 रिक्त स्थान 5 की पूर्ति के लिए सबसे उपयुक्त विकल्प का चयन कीजिए।

- Ans
- 1. प्रयोगशाला
  - 2. किताबशाला
  - 3. कृतज्ञता
  - 4. योग्यता

Question ID : 264330111033  
Status : Not Answered  
Chosen Option : --

# Constable GD in CAPFs SSF Rifleman GD in Assam Rifles and Sepoy in NCB Examination 2022

Roll Number	<b>KD Job Updates</b>
Candidate Name	<b>KD Job Updates</b>
Venue Name	iON Digital Zone iDZ5 Patliputra
Exam Date	13/02/2023
Exam Time	2:30 PM - 3:30 PM
Subject	Constable GD Examination 2022

## Section : Part-A-General Intelligence and Reasoning

**Q.1** Six students Melanie, Sucheta, Martin, Suzanne, Danish and Jacob are sitting around a circular table facing the centre. Melanie is sitting second to the right of Sucheta. Suzanne is an immediate neighbour of Melanie and Sucheta. Danish is sitting third to the right of Suzanne. Martin is an immediate neighbour of Sucheta and Danish. Jacob is sitting third to the right of Sucheta. Who is sitting between Martin and Suzanne?

- Ans
- 1. Jacob
  - 2. Melanie
  - 3. Sucheta
  - 4. Danish

Question ID : 26433081789  
Status : Answered  
Chosen Option : 3

**Q.2** Which of the following numbers will replace the question marks (?) in the given series?  
99, 110, 132, ?, 209, ?, 330

- Ans
- 1. 165, 264
  - 2. 188, 294
  - 3. 168, 268
  - 4. 169, 288

Question ID : 26433070226  
Status : Answered  
Chosen Option : 1

**Q.3** In a certain code language, 'FOREST' is written as 'SPGVUG' and 'FRENCH' is written as 'FSGJEP'. How will 'FRIEND' be written as in that language?

- Ans
- 1. IRFDNE
  - 2. IRFFPG
  - 3. JSGDNE
  - 4. JSGFPG

Question ID : 26433090045  
Status : Answered  
Chosen Option : 4

**Q.4** There are six members of a family- A, B, C, D, E and F. D has 3 sons A, B and C. D is not the father of the children. B has one son E. C has one daughter F. How is B related to F?

- Ans**
- 1. Father's brother
  - 2. Son
  - 3. Father's father
  - 4. Father

Question ID : 26433074595  
Status : Answered  
Chosen Option : 1

**Q.5** Select the option that is related to the third term in the same way as the second term is related to the first term.  
ELECTRIC : GNGEVTKE :: NUCLEAR : ?

- Ans**
- 1. PWENGCT
  - 2. MTBKDZQ
  - 3. PDZQDBS
  - 4. OVDMDBS

Question ID : 26433067261  
Status : Answered  
Chosen Option : 1

**Q.6** Three statements are given followed by three conclusions numbered I, II and III. Assuming the statements to be true, even if they seem to be at variance with commonly known facts, decide which of the conclusions logically follow(s) from the statements.

Statements:

All hands are fingers.

All legs are fingers.

All fingers are toes.

Conclusions:

I. All legs are toes.

II. All toes are hands.

III. Some toes are legs.

- Ans**
- 1. Only conclusions I and II follow
  - 2. Only conclusions II and III follow
  - 3. Only conclusions I and III follow
  - 4. All conclusions follow

Question ID : 26433082313  
Status : Answered  
Chosen Option : 3



Q.7 Select the correct combination of mathematical signs to sequentially replace the \* signs and to balance the given equation.

$$420 * 42 * 10 * 2 * 102$$

- Ans
- 1. =, +, x, ÷
  - 2. ÷, x, +, =
  - 3. ÷, +, =, x
  - 4. x, ÷, =, +

Question ID : 26433094987

Status : Answered

Chosen Option : 2

Q.8 Select the option that is related to the third word in the same way as the second word is related to the first word.

(The words must be considered as meaningful English words and must not be related to each other based on the number of letters/number of consonants/vowels in the word)

Tiger : India :: Giant Panda : ?

- Ans
- 1. Taiwan
  - 2. Vietnam
  - 3. China
  - 4. Russia

Question ID : 26433079480

Status : Not Answered

Chosen Option : --

Q.9 Select the correct mirror image of the given figure when the mirror is placed at MN as shown below.

biBLioGraPHy

M

|

N

- Ans
- 1. yH9rGoiidd
  - 2. yH9rGoiidd
  - 3. YH9rGoiidd
  - 4. YH9rGoiidd

Question ID : 26433085547

Status : Answered

Chosen Option : 1

**Q.10** Select the option that is related to the third term in the same way as the second term is related to the first term and the sixth term is related to the fifth term.  
13 : 196 :: 16 : ? :: 17 : 324

- Ans
- 1. 289
  - 2. 298
  - 3. 258
  - 4. 292

Question ID : 26433069096  
Status : Answered  
Chosen Option : 1

**Q.11** Which of the following terms will replace the question mark (?) in the given series?  
MDVG, NFYK, OHBO, PJES, ?

- Ans
- 1. QIGQ
  - 2. QKGU
  - 3. QLFU
  - 4. QLHW

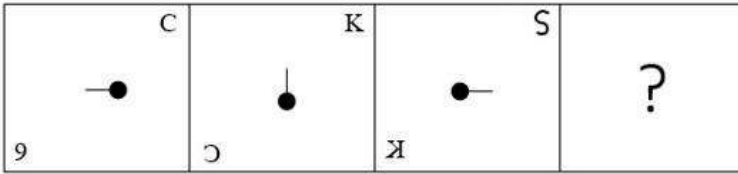
Question ID : 26433069447  
Status : Answered  
Chosen Option : 4

**Q.12** Seven people, A, B, C, D, E, F and G are sitting in a straight row, facing north. A sits second from the left. Only two people sit between A and C. Only three people sit between D and F and D is an immediate neighbour of A. B is an immediate neighbour of D and E is not an immediate neighbour of C. Who sits to the immediate left of F?

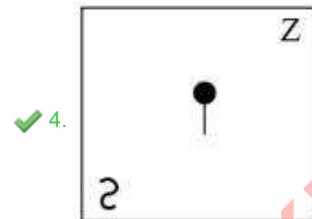
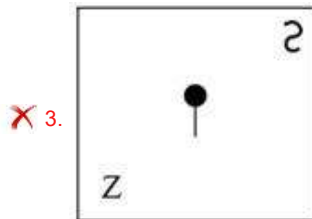
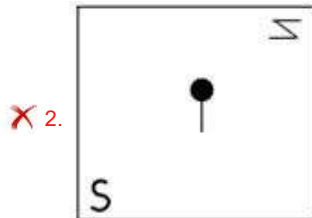
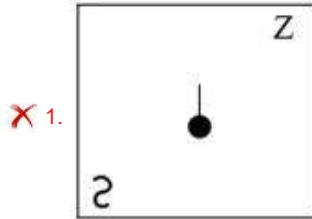
- Ans
- 1. E
  - 2. B
  - 3. C
  - 4. G

Question ID : 26433056933  
Status : Answered  
Chosen Option : 4

Q.13 Select the figure from among the given options that can replace the question mark (?) in the following series.



Ans



KD Job Updates

Question ID : 26433080763  
Status : Answered  
Chosen Option : 4

Q.14 Which of the following numbers will replace the question mark (?) in the given series?  
2, 5, 18, 41, ?

- Ans
- ✓ 1. 74
  - ✗ 2. 43
  - ✗ 3. 31
  - ✗ 4. 67

Question ID : 26433082738  
Status : Answered  
Chosen Option : 1

Q.15 Which of the following letter-clusters will replace the question mark (?) in the given series?

PDYI, MGVL, ?, GMPR, DPMU

- Ans
- 1. KJRO
  - 2. JJTP
  - 3. IJSO
  - 4. JJSO

Question ID : 26433076434  
Status : Answered  
Chosen Option : 4

Q.16 In a certain code language, 'COGENT' is written as 'FMJCQR' and 'BRINK' is written as 'EPLLN'. How will 'RANKED' be written in that language?

- Ans
- 1. UZRJGA
  - 2. NVLOZA
  - 3. UYQIHB
  - 4. MXCHVI

Question ID : 26433069462  
Status : Answered  
Chosen Option : 3

Q.17 Which two signs should be interchanged to make the below equation mathematically correct?

$$24 + 72 \div 12 \times 36 - 12 = 168$$

- Ans
- 1. + and -
  - 2. × and +
  - 3. × and +
  - 4. + and -

Question ID : 264330117530  
Status : Answered  
Chosen Option : 2

Q.18 Select the option that represents the correct order of the given words as they would appear in an English dictionary.

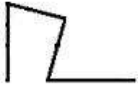
1. PRISM
2. PRINT
3. PRIOR
4. PRISE
5. PROBE
6. PRIZE

- Ans
- 1. 5, 6, 4, 1, 2, 3
  - 2. 1, 3, 2, 4, 6, 5
  - 3. 2, 3, 4, 1, 6, 5
  - 4. 3, 2, 4, 1, 6, 5

Question ID : 26433079382  
Status : Answered  
Chosen Option : 3

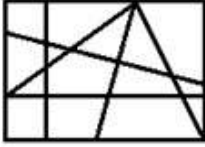
Q.19

Select the option figure in which the given figure is embedded as its part (rotation is not allowed).

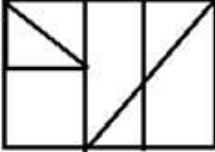


Ans

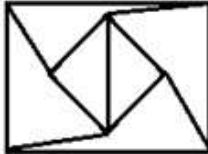
✓ 1.



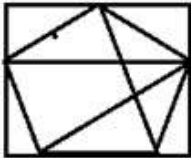
✗ 2.



✗ 3.



✗ 4.



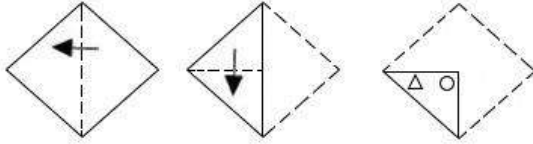
Question ID : 26433069542

Status : Answered

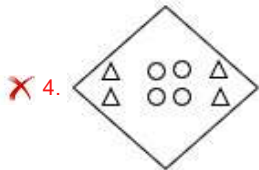
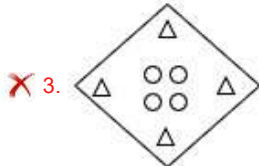
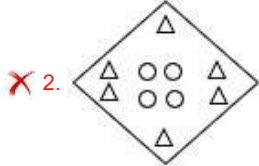
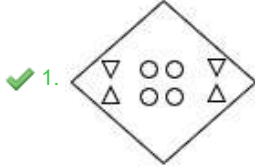
Chosen Option : 1

KD Job Updates

Q.20 A paper is folded and cut as shown below. How will it appear when unfolded?



Ans



Question ID : 26433090092  
Status : Answered  
Chosen Option : 1

Section : Part-B-General Knowledge and General awareness

Q.1 Who became Punjab's Chief Minister after election in 2022?

- Ans
- ✗ 1. Amarinder Singh
  - ✗ 2. Charanjit Singh Channi
  - ✓ 3. Bhagwant Mann
  - ✗ 4. Parkash Singh Badal

Question ID : 264330115020  
Status : Answered  
Chosen Option : 3

**Q.2** The Narmada river rises in which of the following place?

- Ans
- 1. Satpura
  - 2. Nasik
  - 3. Amarkantak hills
  - 4. Mahabaleshwar

Question ID : 264330116000  
Status : Answered  
Chosen Option : 3

**Q.3** Which of the following Indian states does not share its border with China?

- Ans
- 1. Sikkim
  - 2. Arunachal Pradesh
  - 3. Himachal Pradesh
  - 4. Uttar Pradesh

Question ID : 264330116101  
Status : Answered  
Chosen Option : 4

**Q.4** The five-day long Ganga Mahotsav is celebrated in which city of Uttar Pradesh?

- Ans
- 1. Varanasi
  - 2. Lucknow
  - 3. Noida
  - 4. Kanpur

Question ID : 26433092392  
Status : Answered  
Chosen Option : 1

**Q.5** Wangala is the famous folk dance of \_\_\_\_\_.

- Ans
- 1. Mizoram
  - 2. Bihar
  - 3. West Bengal
  - 4. Meghalaya

Question ID : 26433071661  
Status : Answered  
Chosen Option : 4

**Q.6** The Code of Criminal Procedure was enacted in year \_\_\_\_\_ in India.

- Ans
- 1. 1971
  - 2. 1975
  - 3. 1973
  - 4. 1977

Question ID : 264330116209  
Status : Answered  
Chosen Option : 1

Q.7 The term 'shooting guard' is used in which of the following games/sports?

- Ans  1. Basketball  
 2. Tennis  
 3. Volleyball  
 4. Table tennis

Question ID : 26433071573  
Status : Not Answered  
Chosen Option : --

Q.8 In the Tamil region, landless labourers, including slaves, were known as \_\_\_\_\_ during Sangam age.

- Ans  1. kadaiyyar and adimai  
 2. vellalar and adimai  
 3. kadaiyyar and uzhar  
 4. vellalar and uzhar

Question ID : 26433085226  
Status : Not Answered  
Chosen Option : --

Q.9 As of November 2022, who is the Union Minister for Law and Justice in India?

- Ans  1. Devendra Fadnis  
 2. Kiren Rijju  
 3. Ashwini Vaishnav  
 4. Piyush Goyal

Question ID : 264330114965  
Status : Answered  
Chosen Option : 2

Q.10 Who was responsible for the Jallianwala Bagh massacre?

- Ans  1. General Dawson  
 2. General Dyer  
 3. General Haunters  
 4. General Panters

Question ID : 264330115698  
Status : Answered  
Chosen Option : 2



Q.11 \_\_\_\_\_ is an electronic payment system that enables customers of a bank or other financial institution to conduct a range of financial transactions through the financial institution's website.

- Ans
- 1. Internet banking
  - 2. Interstate banking
  - 3. Single entry system
  - 4. Inter corporate banking

Question ID : 264330115317  
Status : Answered  
Chosen Option : 1

Q.12 The first ever Khelo India University Games were organised in which of the following state?

- Ans
- 1. Maharashtra
  - 2. Punjab
  - 3. Odisha
  - 4. Assam

Question ID : 264330116277  
Status : Answered  
Chosen Option : 1

Q.13 Guru Bipin Singh won various accolades in which dance form?

- Ans
- 1. Kathak
  - 2. Kathakali
  - 3. Lavani
  - 4. Manipuri

Question ID : 264330115863  
Status : Not Answered  
Chosen Option : --

Q.14 Manufacturing sectors are considered as the \_\_\_\_\_ of general and economic development.

- Ans
- 1. hand
  - 2. foot
  - 3. knee
  - 4. backbone

Question ID : 264330115564  
Status : Answered  
Chosen Option : 4

Q.15 Which of the following equations is correct for one mole of gas?

- Ans
- 1.  $V_1/V_2 = T_1^2/T_2^2$  (at constant pressure)
  - 2.  $V_1/V_2 = \sqrt{T_1/\sqrt{T_2}}$  (at constant pressure)
  - 3.  $V_1/V_2 = T_1/T_2$  (at constant pressure)
  - 4.  $p_1/V_1 = p_1/V_2$  (at constant temperature)

Question ID : 26433066473  
Status : Answered  
Chosen Option : 3

Q.16 Cell is the \_\_\_\_\_ living part of an organism.

- Ans
- 1. longest
  - 2. smallest
  - 3. finest
  - 4. thinnest

Question ID : 264330115242  
Status : Answered  
Chosen Option : 2

Q.17 What does Sub-Section (g) of the list of Fundamental Duties deal with?

- Ans
- 1. Education of Child
  - 2. Protect and improve the natural environment
  - 3. Safeguarding public property
  - 4. Preserve the rich heritage of our composite culture

Question ID : 26433054522  
Status : Not Answered  
Chosen Option : --

Q.18 In India, Green Revolution aimed at:

- Ans
- 1. national food security
  - 2. dependency on other countries
  - 3. national armed force security
  - 4. ozone depletion

Question ID : 264330115427  
Status : Answered  
Chosen Option : 1

Q.19 Quorum in a parliamentary procedure can be understood as the \_\_\_\_\_.

- Ans
- 1. total number of strength of the house
  - 2. minimum number of strength to run the business of the house
  - 3. total members of Lok Sabha
  - 4. total number of ministers present in Rajya Sabha

Question ID : 26433074911  
Status : Answered  
Chosen Option : 1

Q.20 IPR-1956 laid the foundation of the \_\_\_\_\_ Five-Year Plan.

- Ans
- 1. Second
  - 2. Sixth
  - 3. Fourth
  - 4. Tenth

Question ID : 26433054784  
Status : Answered  
Chosen Option : 1

Section : Part-C-Elementary Mathematics

Q.1 Two boats A and B start moving towards each other from two places, 272 km apart. The speed of the boat A and B in still water are 32 km/h and 36 km/h, respectively. If A moves in downstream and B moves in upstream, then in how much time they will meet each other?

- Ans
- 1. 4 hours
  - 2. 3 hours
  - 3. 5 hours
  - 4. 6 hours

Question ID : 26433075520  
Status : Not Answered  
Chosen Option : --

Q.2 What is the value of 10% of 20% of 1750?

- Ans
- 1. 30
  - 2. 35
  - 3. 28
  - 4. 32

Question ID : 26433075646  
Status : Answered  
Chosen Option : 2

Q.3 A shopkeeper allows a discount of 20% on an article. What will be the selling price of the article marked for ₹600?

- Ans
- 1. ₹400
  - 2. ₹480
  - 3. ₹450
  - 4. ₹420

Question ID : 26433087363  
Status : Answered  
Chosen Option : 2

Q.4 A boat can travel at a speed of 10 km/h in still water. If the speed of the stream is 2 km/h, find the time taken by the boat to go 72 km downstream.

- Ans
- 1. 4 hours
  - 2. 7 hours
  - 3. 5 hours
  - 4. 6 hours

Question ID : 26433080133  
Status : Not Answered  
Chosen Option : --

Q.5 A solid metallic cylinder of base radius 3 cm and height 4 cm is melted to form cones, each of height 2 cm and radius 1 cm. The number of cones is:

- Ans
- 1. 58
  - 2. 64
  - 3. 56
  - 4. 54

Question ID : 26433076089  
Status : Answered  
Chosen Option : 4

Q.6 Simplify  $\left[ 3\frac{1}{2} \div \left\{ 1\frac{1}{4} - \left( \frac{1}{2} + \frac{1}{3} \right) \right\} + \frac{7}{5} \right]$ .

- Ans
- 1. 5
  - 2. 7
  - 3.  $9\frac{4}{5}$
  - 4.  $8\frac{5}{6}$

Question ID : 26433074446  
Status : Answered  
Chosen Option : 3

Q.7 Find the compound interest, compounding annually on ₹75,000 for 3 years, if the rate of interest is 5% for the first year, 6% for the second year and 8% for the third year.

- Ans
- 1. ₹15,150
  - 2. ₹15,153
  - 3. ₹15,160
  - 4. ₹15,260

Question ID : 26433080193  
Status : Answered  
Chosen Option : 2

Q.8 The average of 3, 5, 10 and x is 5. The average of 8, 12, 15, x and y is 9. x and y, respectively, are:

- Ans
- 1. 3 and 8
  - 2. 3 and 9
  - 3. 2 and 3
  - 4. 2 and 8

Question ID : 26433082643  
Status : Answered  
Chosen Option : 4

Q.9 A carton of mango juice contains 500 ml. A special offer carton contains an extra 15 percent. How much mango juice is there in the special offer carton?

- Ans
- 1. 575 ml
  - 2. 640 ml
  - 3. 590 ml
  - 4. 545 ml

Question ID : 264330116813  
Status : Answered  
Chosen Option : 1

Q.10 A dishonest seller sells rice at Rs.24/kg, which he has bought at Rs.20/kg, and he gives 800 g instead of 1 kg. His actual profit percentage is:

- Ans
- 1. 43.75%
  - 2. 40%
  - 3. 50%
  - 4. 56.25%

Question ID : 26433072968  
Status : Answered  
Chosen Option : 2

Q.11 The greatest common divisor of 2.16, 2.44 and 3.36 is:

- Ans
- 1. 0.05
  - 2. 0.02
  - 3. 0.03
  - 4. 0.04

Question ID : 26433091510  
Status : Answered  
Chosen Option : 4

Q.12 A and B can do a piece of work in 60 days and 75 days respectively. How many days are required to complete the task if they work together?

- Ans
- 1. 35
  - 2. 35.5
  - 3.  $33\frac{1}{3}$
  - 4. 36

Question ID : 26433079890  
Status : Answered  
Chosen Option : 3

Q.13 Rakesh has to fill water in a cylindrical container of height 10 cm and radius 10 cm with a hemispherical bowl of radius 5 cm. How many times does he have to pour water into the cylindrical container with the hemispherical bowl to fill the tank completely with water?

- Ans
- 1. 16
  - 2. 19
  - 3. 12
  - 4. 15

Question ID : 26433075329  
Status : Not Answered  
Chosen Option : --

Q.14 What will be the amount on a sum of Rs.1,000 for 3 years at 10% compound interest per annum compounding annually?

- Ans
- 1. Rs.1,331
  - 2. Rs.2,311
  - 3. Rs.4,121
  - 4. Rs.3,122

Question ID : 26433064917  
Status : Answered  
Chosen Option : 1

Q.15 A dealer professes to sell his articles at cost price but he uses a false weight of 735 grams for a kilogram. The gain percent of the dealer is: (correct to 2 decimal places)

- Ans
- 1. 38.15%
  - 2. 36.05%
  - 3. 35.25%
  - 4. 40.05%

Question ID : 26433074924  
Status : Answered  
Chosen Option : 2

Q.16 Aman, Raman and Yash together can complete a piece of work in 29 days. Raman and Yash together can complete the same work in 58 days. Aman, Raman and Yash started working together but Aman left the work after 15 days from starting. Find the number of days in which Raman and Yash completed the remaining work.

- Ans
- 1. 21 days
  - 2. 50 days
  - 3. 28 days
  - 4. 54 days

Question ID : 264330116893  
Status : Not Answered  
Chosen Option : --

Q.17 Determine the list price of an item if a 10% discount on the item amounts to ₹100.

- Ans
- 1. ₹800
  - 2. ₹1,000
  - 3. ₹1,500
  - 4. ₹1,200

Question ID : 26433061359  
Status : Answered  
Chosen Option : 2

Q.18 20 kg of rice priced at ₹9 per kg has been mixed with 25 kg of rice priced at ₹10 per kg. What is the average price of 1 kg of the mixed rice? (Rounded off to one decimal place)

- Ans
- 1. ₹7.2
  - 2. ₹6.3
  - 3. ₹8.5
  - 4. ₹9.5

Question ID : 26433079999  
Status : Answered  
Chosen Option : 4

Q.19 Two numbers are in the ratio 2 : 3. If 7 is subtracted from each number, the new numbers are in the ratio 7 : 11. The smaller number is:

- Ans
- 1. 65
  - 2. 54
  - 3. 56
  - 4. 45

Question ID : 26433076375  
Status : Answered  
Chosen Option : 3

Q.20 If 48,  $x^2$  and 27 are in proportion, then the value of x is:

- Ans
- 1. 4
  - 2. 36
  - 3. 6
  - 4. 16

Question ID : 26433075437  
Status : Answered  
Chosen Option : 3

Section : Part-D-English

Q.1 Select the correctly spelt word.

- Ans
- 1. Entrepreneur
  - 2. Entreprineyour
  - 3. Enterpreneur
  - 4. Entripreiniur

Question ID : 26433086496  
Status : Answered  
Chosen Option : 1

Q.2 Select the most appropriate option that can substitute the underlined segment in the given sentence.

The marksheets of many students have been withheld by the university.

- Ans
- 1. kept back
  - 2. gone through
  - 3. handed out
  - 4. given away

Question ID : 26433099872  
Status : Answered  
Chosen Option : 4



**Q.3** Parts of the following sentence have been given as options. One of them may contain an error. Select the part that contains the error from the given options. If you don't find any error, mark 'No error' as your answer.

How foolish I was to have believe that young woman!

- Ans
- 1. to have believe
  - 2. No error
  - 3. How foolish I was
  - 4. that young woman

Question ID : 26433090483  
Status : Answered  
Chosen Option : 1

**Q.4** Select the most appropriate ANTONYM of the underlined word in the given sentence.

She is found to pass derogatory remarks to others.

- Ans
- 1. cunning
  - 2. appreciative
  - 3. critical
  - 4. sarcastic

Question ID : 26433092094  
Status : Answered  
Chosen Option : 2

**Q.5** Select the INCORRECTLY spelt word.

- Ans
- 1. Hapily
  - 2. Quickly
  - 3. Bravely
  - 4. Slowly

Question ID : 26433071818  
Status : Answered  
Chosen Option : 1

**Q.6** Select the most appropriate synonym of the word given in brackets to fill in the blank.

Some women have reached the \_\_\_\_\_(peak) in their profession.

- Ans
- 1. zenith
  - 2. finale
  - 3. sky
  - 4. crossroads

Question ID : 26433070469  
Status : Answered  
Chosen Option : 1

Q.7 Select the most appropriate ANTONYM of the given word.

Smart

- Ans  1. Elegant  
 2. Shabby  
 3. Speedy  
 4. Leisurely

Question ID : 26433084686  
Status : Answered  
Chosen Option : 2

Q.8 Select the most appropriate option that can substitute the underlined segment in the given sentence. If there is no need to substitute it, select 'No substitution'.

You cannot walk throughout deserts by bare feet or they'll get burned.

- Ans  1. through deserts on  
 2. through deserts by  
 3. No substitution  
 4. though deserts on

Question ID : 26433088910  
Status : Answered  
Chosen Option : 3

Q.9 Select the most appropriate meaning of the underlined idiom in the given sentence.

An ox on their tongue was the only way officers would have allowed him to carry on the unlawful activities he was involved in.

- Ans  1. Bribed to remain silent  
 2. Being frank  
 3. Telling lies  
 4. Getting no appreciation

Question ID : 26433072091  
Status : Answered  
Chosen Option : 1

Q.10 Select the most appropriate synonym of the given word.

Hypocrisy

- Ans  1. Trickery  
 2. Honesty  
 3. Inaccuracy  
 4. Sincerity

Question ID : 26433074049  
Status : Answered  
Chosen Option : 1

Q.11 Select the most appropriate ANTONYM of the given word.

Flexible

- Ans  1. Obstinate  
 2. Snobbish  
 3. Hysterical  
 4. Staunch

Question ID : 26433091822  
Status : Answered  
Chosen Option : 1

Q.12 Select the most appropriate synonym of the given word.

Obliterate

- Ans  1. Erase  
 2. Assist  
 3. Construct  
 4. Create

Question ID : 26433088203  
Status : Answered  
Chosen Option : 3

Q.13 Select the most appropriate option that can substitute the underlined segment in the given sentence.

His wife has a bad habit for accusing him for others' mistakes too.

- Ans  1. habit of accusing him  
 2. habit at accusing him  
 3. habit on accusing him  
 4. habit in accusing him

Question ID : 26433091966  
Status : Answered  
Chosen Option : 1

Q.14 Select the most appropriate meaning of the given idiom.

Up a creek without a paddle

- Ans  1. In an unfinished mission  
 2. In a partially complete construction work  
 3. In a satisfied and calm atmosphere  
 4. In a troublesome and serious situation

Question ID : 26433073481  
Status : Answered  
Chosen Option : 1

**Q.15 Select the most appropriate synonym of the word given in brackets to fill in the blank.**

I suppose it is a \_\_\_\_\_ (fair) solution to the problem at hand.

- Ans  1. pale  
 2. reasonable  
 3. bright  
 4. exhibition

Question ID : 26433072110  
Status : Answered  
Chosen Option : 2

**Comprehension:**

In the following passage, some words have been deleted. Read the passage carefully and select the most appropriate option to fill in each blank.

Road rage is a common (1)\_\_\_\_\_ in most parts of the world. Although there are a few countries where the drivers involved just stay stationed (2)\_\_\_\_\_ the police arrive, without getting into any argument, it is not the case in many other countries. There have been instances where people (3)\_\_\_\_\_ killed due to road rage because of the collision or even a minor scratch to one or two of the vehicles involved. Although the insurance companies are doing their best to (4)\_\_\_\_\_ for the losses, the number of instances of road rage continues to (5)\_\_\_\_\_.

**SubQuestion No : 16**

**Q.16 Select the most appropriate option to fill in blank number 1.**

- Ans  1. dominion  
 2. structure  
 3. phenomenon  
 4. pavilion

Question ID : 26433091794  
Status : Answered  
Chosen Option : 3

**Comprehension:**

In the following passage, some words have been deleted. Read the passage carefully and select the most appropriate option to fill in each blank.

Road rage is a common (1)\_\_\_\_\_ in most parts of the world. Although there are a few countries where the drivers involved just stay stationed (2)\_\_\_\_\_ the police arrive, without getting into any argument, it is not the case in many other countries. There have been instances where people (3)\_\_\_\_\_ killed due to road rage because of the collision or even a minor scratch to one or two of the vehicles involved. Although the insurance companies are doing their best to (4)\_\_\_\_\_ for the losses, the number of instances of road rage continues to (5)\_\_\_\_\_.

**SubQuestion No : 17**

**Q.17 Select the most appropriate option to fill in blank number 2.**

- Ans  1. besides  
 2. for  
 3. along  
 4. till

Question ID : 26433091795  
Status : Answered  
Chosen Option : 4

**Comprehension:**

In the following passage, some words have been deleted. Read the passage carefully and select the most appropriate option to fill in each blank.

Road rage is a common (1)\_\_\_\_\_ in most parts of the world. Although there are a few countries where the drivers involved just stay stationed (2)\_\_\_\_\_ the police arrive, without getting into any argument, it is not the case in many other countries. There have been instances where people (3)\_\_\_\_\_ killed due to road rage because of the collision or even a minor scratch to one or two of the vehicles involved. Although the insurance companies are doing their best to (4)\_\_\_\_\_ for the losses, the number of instances of road rage continues to (5)\_\_\_\_\_.

**SubQuestion No : 18**

**Q.18 Select the most appropriate option to fill in blank number 3.**

**Ans** ✓ 1. were

✗ 2. where

✗ 3. would

✗ 4. are

Question ID : 26433091796

Status : Answered

Chosen Option : 4

**Comprehension:**

In the following passage, some words have been deleted. Read the passage carefully and select the most appropriate option to fill in each blank.

Road rage is a common (1)\_\_\_\_\_ in most parts of the world. Although there are a few countries where the drivers involved just stay stationed (2)\_\_\_\_\_ the police arrive, without getting into any argument, it is not the case in many other countries. There have been instances where people (3)\_\_\_\_\_ killed due to road rage because of the collision or even a minor scratch to one or two of the vehicles involved. Although the insurance companies are doing their best to (4)\_\_\_\_\_ for the losses, the number of instances of road rage continues to (5)\_\_\_\_\_.

**SubQuestion No : 19**

**Q.19 Select the most appropriate option to fill in blank number 4.**

**Ans** ✓ 1. compensate

✗ 2. infiltrate

✗ 3. compete

✗ 4. hesitate

Question ID : 26433091797

Status : Answered

Chosen Option : 1

**Comprehension:**

In the following passage, some words have been deleted. Read the passage carefully and select the most appropriate option to fill in each blank.

Road rage is a common (1)\_\_\_\_\_ in most parts of the world. Although there are a few countries where the drivers involved just stay stationed (2)\_\_\_\_\_ the police arrive, without getting into any argument, it is not the case in many other countries. There have been instances where people (3)\_\_\_\_\_ killed due to road rage because of the collision or even a minor scratch to one or two of the vehicles involved. Although the insurance companies are doing their best to (4)\_\_\_\_\_ for the losses, the number of instances of road rage continues to (5)\_\_\_\_\_.

**SubQuestion No : 20**

**Q.20** Select the most appropriate option to fill in blank number 5.

- Ans
- 1. oscillate
  - 2. weaken
  - 3. ruminate
  - 4. escalate

Question ID : 26433091798

Status : Answered

Chosen Option : 2

**Section : Part-D-Hindi**

**Q.1** वर्तनी की दृष्टि से अशुद्ध वाक्य का चयन कीजिए-

- Ans
- 1. मैं आपसे असहमत नहीं हूँ।
  - 2. यह प्रस्ताव सब को स्वीकार्य है।
  - 3. माउंट आबू के मंदिर देखने लायक हैं।
  - 4. मेरे पास चार रूपए से अधिक नहीं हैं।

Question ID : 26433062889

Status : Not Answered

Chosen Option : --

**Q.2** 'अव्यवस्था' के लिए विलोम शब्द होगा-

- Ans
- 1. कुव्यवस्था
  - 2. सुव्यवस्था
  - 3. गड़बड़
  - 4. अराजकता

Question ID : 26433085077

Status : Not Answered

Chosen Option : --

Q.3 नीचे दिए गए वाक्य में रेखांकित अंश के स्थान पर सबसे उपयुक्त विकल्प कौन-सा होगा?  
मेरे को दिल्ली जाना है।

- Ans
- 1. इसका
  - 2. तेरे को
  - 3. मुझे
  - 4. इसकी

Question ID : 26433066716  
Status : Not Answered  
Chosen Option : --

Q.4 वर्तनी की दृष्टि से अशुद्ध वाक्य का चयन कीजिए-

- Ans
- 1. यदि दवा लगे तो बूखार कम हो जाएगा।
  - 2. मनोहर या तो स्वयं आयेगा या तार भेजेगा।
  - 3. यद्यपि शेर घायल हो गया तथापि वह मारा नहीं गया।
  - 4. मोहन एक पुस्तक चाहता था और वह उसे मिल गई।

Question ID : 26433062897  
Status : Not Answered  
Chosen Option : --

Q.5 निम्नलिखित शब्दों में से कौन सा शब्द द्रव्यवाचक संज्ञा शब्द है?

- Ans
- 1. कोयला
  - 2. साहस
  - 3. सूरज
  - 4. विद्यार्थी

Question ID : 26433085026  
Status : Not Answered  
Chosen Option : --

Q.6 दिए गए मुहावरे में रेखांकित अंश के स्थान पर सबसे उपयुक्त विकल्प कौन-सा होगा?  
'करत करत अभ्यास के आदमी होत सुजान'

- Ans
- 1. मनुष्य
  - 2. राजा
  - 3. जड़मति
  - 4. बुद्धिमति

Question ID : 26433066741  
Status : Not Answered  
Chosen Option : --

Q.7 निम्नलिखित शब्दों में से कौन सा शब्द क्रिया विशेषण शब्द नहीं है?

- Ans  1. कब  
 2. कल  
 3. जब  
 4. क्या

Question ID : 26433085045  
Status : Not Answered  
Chosen Option : --

Q.8 चाँद की अपनी रौशनी नहीं होती अपितु वह \_\_\_\_\_ से प्रकाश पाता है।  
'सूरज' के पर्याय से उपरोक्त वाक्य के रिक्त स्थान की पूर्ति कीजिए।

- Ans  1. ललित  
 2. भूधर  
 3. आदित्य  
 4. हिमकर

Question ID : 26433084987  
Status : Not Answered  
Chosen Option : --

Q.9 निम्नलिखित विकल्पों में से 'जो जाना न जा सके' वाक्यांश के लिए एक सार्थक शब्द क्या होगा?

- Ans  1. अनन्य  
 2. अज्ञेय  
 3. प्रमेय  
 4. सर्वज्ञ

Question ID : 26433062472  
Status : Not Answered  
Chosen Option : --

Q.10 'जो भू के गर्भ का हाल जानता हो' वाक्यांश के लिए इनमें से सही शब्द क्या है?

- Ans  1. परमज्ञानी  
 2. परमेश्वर  
 3. भूगर्भवित्त  
 4. ब्रह्मज्ञानी

Question ID : 26433070149  
Status : Not Answered  
Chosen Option : --



Q.11 निम्नलिखित वाक्य में रेखांकित खंड के स्थान पर प्रयुक्त होने वाले सबसे उपयुक्त विकल्प का चयन कीजिए।

अंशु ने अलमारी से पुस्तक निकाला।

- Ans
- 1. निकाले
  - 2. निकाली
  - 3. निकाल
  - 4. निकली

Question ID : 26433079568

Status : Not Answered

Chosen Option : --

Q.12 निम्न वाक्य में रेखांकित शब्द के विलोम से रिक्त स्थान की पूर्ति कीजिए।  
'जब आदि से सब कुछ अच्छा हो तो \_\_\_\_\_ भी भला ही होता है।'

- Ans
- 1. परिणाम
  - 2. भविष्य
  - 3. आरम्भ
  - 4. अंत

Question ID : 26433085001

Status : Not Answered

Chosen Option : --

Q.13 'हथेली पर सरसों जमाना' मुहावरे का सही अर्थ है -

- Ans
- 1. कम समय में कठिन कार्य करने की कोशिश करना
  - 2. कृषि करना
  - 3. दूसरे की भलाई के लिए खुद को मुश्किल में डालना
  - 4. अच्छी फ़सल होना

Question ID : 26433065929

Status : Not Answered

Chosen Option : --

Q.14 'जिसमें दया की भावना न हो' वाक्यांश के लिए उचित शब्द क्या होगा?

- Ans
- 1. अभय
  - 2. निर्दय
  - 3. निर्जीव
  - 4. निर्भय

Question ID : 26433067066

Status : Not Answered

Chosen Option : --

Q.15 निम्न में से किस वाक्य में 'अधम' के सही पर्यायवाची शब्द का प्रयोग हुआ है?

- Ans
- 1. राकेश सदैव अधर्म का पक्ष लेता है।
  - 2. यह रास्ता नीचे की ओर जाता है।
  - 3. मोहन अत्यंत विद्वान है।
  - 4. वह बहुत नीच व्यक्ति है।

Question ID : 26433067011

Status : Not Answered

Chosen Option : --

**Comprehension:**

निम्न गद्यांश के आधार पर प्रश्न संख्या 1-5 के उत्तर दीजिए।

निबंध शब्द अंग्रेजी के 'Essay' का हिंदी पर्याय है। जिसका शाब्दिक अर्थ है- किसी विषय पर विचारों को सूत्रबद्ध करना, एकत्र करना, संचित कर संगठित करना आदि। विचार प्रधान रचना ही निबंध का अर्थ वहन करने में सक्षम कही जा सकती है। विषय का तार्किक विश्लेषण, रोचकता, सरसता, पाठकों से आत्मीयता, कलात्मक वैशिष्ट्य निबंध के प्रमुख गुण हैं। निबंध विधा का विकास आधुनिक युग में हुआ है। संस्कृत साहित्य में निबंध बौद्धिक अभिव्यक्ति का माध्यम भर थे। निजी अनुभूति, सहजता, स्वच्छन्दता, प्रभावान्विति जैसे गुणों का इनमें अभाव था। आधुनिक युग का निबंध साहित्य इससे सर्वथा भिन्न है। किसी भी विषय पर व्यक्तिगत विचारों को अभिव्यक्ति प्रदान करते हुए निबंधकार स्वच्छंद चिंतन द्वारा विषय के प्रतिपादन में नवीनता लाता है। किसी भी विषय पर निबंध रचना की जा सकती है। यथा- सुधारात्मक प्रवृत्ति प्रधान, समीक्षात्मक, भाव प्रवण, राष्ट्रीय चेतना प्रधान, मनोविकारों संबंधी। सुगठित कलेवर में श्रृंखलाबद्ध ढंग से विवेचन कर निबंधकार श्रेष्ठ निबंधों की रचना कर सकता है। संस्कृत की इस उक्ति कि- "गद्य कवियों की कसौटी है।" पर आचार्य रामचंद्र शुक्ल का यह कथन- "कि यदि पद्य कवियों की कसौटी तो निबंधकार गद्य की कसौटी है।" निबंध कला का महत्व दर्शाने के लिए पर्याप्त है।

SubQuestion No : 16

Q.16 गद्यांश के अनुसार किस प्रकार की रचना निबंध का अर्थ वहन करने में सक्षम है?

- Ans
- 1. विशेष रचना
  - 2. राष्ट्रीय रचना
  - 3. विचार प्रधान रचना
  - 4. स्वच्छंद

Question ID : 26433080960

Status : Not Answered

Chosen Option : --

**Comprehension:**

निम्न गद्यांश के आधार पर प्रश्न संख्या 1-5 के उत्तर दीजिए।  
निबंध शब्द अंग्रेजी के 'Essay' का हिंदी पर्याय है। जिसका शाब्दिक अर्थ है- किसी विषय पर विचारों को सूत्रबद्ध करना, एकत्र करना, संचित कर संगठित करना आदि। विचार प्रधान रचना ही निबंध का अर्थ वहन करने में सक्षम कही जा सकती है। विषय का तार्किक विश्लेषण, रोचकता, सरसता, पाठकों से आत्मीयता, कलात्मक वैशिष्ट्य निबंध के प्रमुख गुण हैं। निबंध विधा का विकास आधुनिक युग में हुआ है। संस्कृत साहित्य में निबंध बौद्धिक अभिव्यक्ति का माध्यम भर थे। निजी अनुभूति, सहजता, स्वच्छन्दता, प्रभावान्विति जैसे गुणों का इनमें अभाव था। आधुनिक युग का निबंध साहित्य इससे सर्वथा भिन्न है। किसी भी विषय पर व्यक्तिगत विचारों को अभिव्यक्ति प्रदान करते हुए निबंधकार स्वच्छंद चिंतन द्वारा विषय के प्रतिपादन में नवीनता लाता है। किसी भी विषय पर निबंध रचना की जा सकती है। यथा- सुधारात्मक प्रवृत्ति प्रधान, समीक्षात्मक, भाव प्रवण, राष्ट्रीय चेतना प्रधान, मनोविकारों संबंधी। सुगठित कलेवर में श्रृंखलाबद्ध ढंग से विवेचन कर निबंधकार श्रेष्ठ निबंधों की रचना कर सकता है। संस्कृत की इस उक्ति कि- "गद्य कवियों की कसौटी है।" पर आचार्य रामचंद्र शुक्ल का यह कथन- "कि यदि पद्य कवियों की कसौटी तो निबंधकार गद्य की कसौटी है।" निबंध कला का महत्व दर्शाने के लिए पर्याप्त है।

**SubQuestion No : 17**

Q.17 निम्नलिखित में से क्या निबंध का प्रमुख गुण नहीं है?

- Ans
- 1. पाठकों से आत्मीयता
  - 2. विषय का तार्किक विश्लेषण
  - 3. कवि की कलात्मकता
  - 4. कलात्मक वैशिष्ट्य

Question ID : 26433080961

Status : Not Answered

Chosen Option : --

**Comprehension:**

निम्न गद्यांश के आधार पर प्रश्न संख्या 1-5 के उत्तर दीजिए।  
निबंध शब्द अंग्रेजी के 'Essay' का हिंदी पर्याय है। जिसका शाब्दिक अर्थ है- किसी विषय पर विचारों को सूत्रबद्ध करना, एकत्र करना, संचित कर संगठित करना आदि। विचार प्रधान रचना ही निबंध का अर्थ वहन करने में सक्षम कही जा सकती है। विषय का तार्किक विश्लेषण, रोचकता, सरसता, पाठकों से आत्मीयता, कलात्मक वैशिष्ट्य निबंध के प्रमुख गुण हैं। निबंध विधा का विकास आधुनिक युग में हुआ है। संस्कृत साहित्य में निबंध बौद्धिक अभिव्यक्ति का माध्यम भर थे। निजी अनुभूति, सहजता, स्वच्छन्दता, प्रभावान्विति जैसे गुणों का इनमें अभाव था। आधुनिक युग का निबंध साहित्य इससे सर्वथा भिन्न है। किसी भी विषय पर व्यक्तिगत विचारों को अभिव्यक्ति प्रदान करते हुए निबंधकार स्वच्छंद चिंतन द्वारा विषय के प्रतिपादन में नवीनता लाता है। किसी भी विषय पर निबंध रचना की जा सकती है। यथा- सुधारात्मक प्रवृत्ति प्रधान, समीक्षात्मक, भाव प्रवण, राष्ट्रीय चेतना प्रधान, मनोविकारों संबंधी। सुगठित कलेवर में श्रृंखलाबद्ध ढंग से विवेचन कर निबंधकार श्रेष्ठ निबंधों की रचना कर सकता है। संस्कृत की इस उक्ति कि- "गद्य कवियों की कसौटी है।" पर आचार्य रामचंद्र शुक्ल का यह कथन- "कि यदि पद्य कवियों की कसौटी तो निबंधकार गद्य की कसौटी है।" निबंध कला का महत्व दर्शाने के लिए पर्याप्त है।

**SubQuestion No : 18**

Q.18 गद्यांश के अनुसार विषय में नवीनता किस प्रकार से आती है?

- Ans
- 1. आधुनिकता से
  - 2. निरन्तरता से
  - 3. नैतिकता से
  - 4. स्वच्छंद चिन्तन से

Question ID : 26433080962

Status : Not Answered

Chosen Option : --

**Comprehension:**

निम्न गद्यांश के आधार पर प्रश्न संख्या 1-5 के उत्तर दीजिए।

निबंध शब्द अंग्रेजी के 'Essay' का हिंदी पर्याय है। जिसका शाब्दिक अर्थ है- किसी विषय पर विचारों को सूत्रबद्ध करना, एकत्र करना, संचित कर संगठित करना आदि। विचार प्रधान रचना ही निबंध का अर्थ वहन करने में सक्षम कही जा सकती है। विषय का तार्किक विश्लेषण, रोचकता, सरसता, पाठकों से आत्मीयता, कलात्मक वैशिष्ट्य निबंध के प्रमुख गुण हैं। निबंध विधा का विकास आधुनिक युग में हुआ है। संस्कृत साहित्य में निबंध बौद्धिक अभिव्यक्ति का माध्यम भर था। निजी अनुभूति, सहजता, स्वच्छन्दता, प्रभावान्विति जैसे गुणों का इनमें अभाव था। आधुनिक युग का निबंध साहित्य इससे सर्वथा भिन्न है। किसी भी विषय पर व्यक्तिगत विचारों को अभिव्यक्ति प्रदान करते हुए निबंधकार स्वच्छंद चिंतन द्वारा विषय के प्रतिपादन में नवीनता लाता है। किसी भी विषय पर निबंध रचना की जा सकती है। यथा- सुधारात्मक प्रवृत्ति प्रधान, समीक्षात्मक, भाव प्रवण, राष्ट्रीय चेतना प्रधान, मनोविकारों संबंधी। सुगठित कलेवर में श्रृंखलाबद्ध ढंग से विवेचन कर निबंधकार श्रेष्ठ निबंधों की रचना कर सकता है। संस्कृत की इस उक्ति कि- "गद्य कवियों की कसौटी है।" पर आचार्य रामचंद्र शुक्ल का यह कथन- "कि यदि पद्य कवियों की कसौटी तो निबंधकार गद्य की कसौटी है।" निबंध कला का महत्व दर्शाने के लिए पर्याप्त है।

**SubQuestion No : 19**

Q.19 आचार्य रामचंद्र शुक्ल ने गद्यकार की कसौटी किसे माना है?

- Ans
- 1. एकांकी
  - 2. कहानी
  - 3. निबंध
  - 4. नाटक

Question ID : 26433080963

Status : Not Answered

Chosen Option : --

**Comprehension:**

निम्न गद्यांश के आधार पर प्रश्न संख्या 1-5 के उत्तर दीजिए।

निबंध शब्द अंग्रेजी के 'Essay' का हिंदी पर्याय है। जिसका शाब्दिक अर्थ है- किसी विषय पर विचारों को सूत्रबद्ध करना, एकत्र करना, संचित कर संगठित करना आदि। विचार प्रधान रचना ही निबंध का अर्थ वहन करने में सक्षम कही जा सकती है। विषय का तार्किक विश्लेषण, रोचकता, सरसता, पाठकों से आत्मीयता, कलात्मक वैशिष्ट्य निबंध के प्रमुख गुण हैं। निबंध विधा का विकास आधुनिक युग में हुआ है। संस्कृत साहित्य में निबंध बौद्धिक अभिव्यक्ति का माध्यम भर था। निजी अनुभूति, सहजता, स्वच्छन्दता, प्रभावान्विति जैसे गुणों का इनमें अभाव था। आधुनिक युग का निबंध साहित्य इससे सर्वथा भिन्न है। किसी भी विषय पर व्यक्तिगत विचारों को अभिव्यक्ति प्रदान करते हुए निबंधकार स्वच्छंद चिंतन द्वारा विषय के प्रतिपादन में नवीनता लाता है। किसी भी विषय पर निबंध रचना की जा सकती है। यथा- सुधारात्मक प्रवृत्ति प्रधान, समीक्षात्मक, भाव प्रवण, राष्ट्रीय चेतना प्रधान, मनोविकारों संबंधी। सुगठित कलेवर में श्रृंखलाबद्ध ढंग से विवेचन कर निबंधकार श्रेष्ठ निबंधों की रचना कर सकता है। संस्कृत की इस उक्ति कि- "गद्य कवियों की कसौटी है।" पर आचार्य रामचंद्र शुक्ल का यह कथन- "कि यदि पद्य कवियों की कसौटी तो निबंधकार गद्य की कसौटी है।" निबंध कला का महत्व दर्शाने के लिए पर्याप्त है।

**SubQuestion No : 20**

Q.20 वैशिष्ट्य शब्द का समानार्थी होगा-

- Ans
- 1. बनावट
  - 2. विशेषता
  - 3. विषय
  - 4. भिन्नता

Question ID : 26433080964

Status : Not Answered

Chosen Option : --

# Constable GD in CAPFs SSF Rifleman GD in Assam Rifles and Sepoy in NCB Examination 2022

Roll Number	<b>KD Job Updates</b>
Candidate Name	<b>KD Job Updates</b>
Venue Name	ION Digital Zone iDZ SARONA
Exam Date	13/02/2023
Exam Time	5:15 PM - 6:15 PM
Subject	Constable GD Examination 2022

Section : **Part-A-General Intelligence and Reasoning**

**Q.1** Six students Lovely, Johnson, Will, Marie, Samantha and Joel are sitting around a circular table facing the centre. Lovely is sitting second to the left of Johnson. Will is sitting second to the right of Johnson. Samantha is sitting third to the left of Will. Joel is sitting third to the right of Johnson. Marie is the immediate neighbour of Will and Johnson. Who is sitting between Lovely and Johnson?

- Ans
- 1. Joel
  - 2. Samantha
  - 3. Will
  - 4. Marie

Question ID : 26433081783

Status : **Not Attempted and Marked For Review**

Chosen Option : --

**Q.2** Select the letter-cluster from among the given options that can replace the question mark (?) in the following series.  
HLPE, DHXM, ZDFU, ? , RVVK

- Ans
- 1. VQHO
  - 2. FBIR
  - 3. VZNC
  - 4. FPED

Question ID : 26433074752

Status : **Answered**

Chosen Option : 3

**Q.3** Which of the following numbers will replace the question mark and complete the given number series?  
14, 16, 21, 32, 49, 72, ?

- Ans
- 1. 105
  - 2. 98
  - 3. 103
  - 4. 101

Question ID : 26433069596

Status : **Answered**

Chosen Option : 4

**Q.4** Select the option that is related to the third word in the same way as the second word is related to the first word.  
(The words must be considered as meaningful English words and must not be related to each other based on the number of letters/number of consonants/vowels in the word)

Wheel : Cart :: Nib : ?

Ans  1. Write

2. Pen

3. Pillow

4. Paper

Question ID : 26433067971

Status : Answered

Chosen Option : 2

**Q.5** In a certain code language,  
'A + B' means 'A is the mother of B',  
'A - B' means 'A is the father of B',  
'A x B' means 'A is the brother of B' and  
'A & B' means 'A is the sister of B'.  
How is Q related to N if N - D x P + Q & C?

Ans  1. Daughter's daughter

2. Daughter

3. Sister

4. Sister's daughter

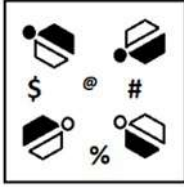
Question ID : 26433070371

Status : Answered

Chosen Option : 3

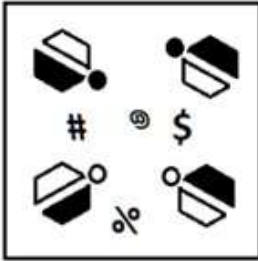
**Q.6** Which of the following figures is the exact mirror image of the given problem figure when the mirror is held at the right side?

Problem figure:

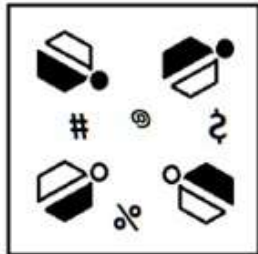


Ans

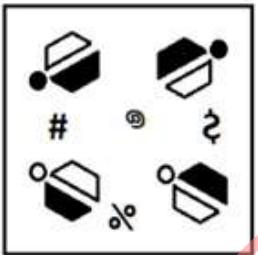
✗ 1.



✓ 2.



✗ 3.



✗ 4.

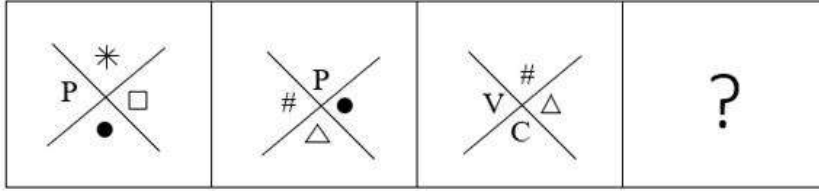


Question ID : 26433087092

Status : Answered

Chosen Option : 4

Q.7 Select the figure from among the given options that can replace the question mark (?) in the following series.

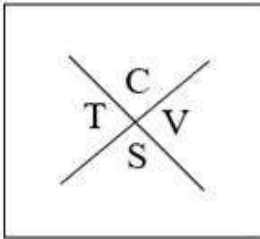


Ans


✗ 1.



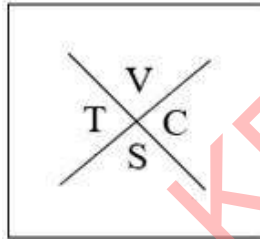
✗ 2.



✗ 3.



✓ 4.



KD Job Updates

Question ID : 26433080759

Status : Not Answered

Chosen Option : --



Q.8 Nine students A, B, C, D, E, F, G, H and Z are seated in one row not necessarily in the same order. D is to the immediate left of C who is at third place to the right of E. B is at one end of the row. H is seated adjacent to both F and G. F is at the third place to the left of B. A is sitting to the immediate left of F. All these nine students are facing the north direction who is sitting in between D and A?

- Ans
- 1. F
  - 2. C
  - 3. Z
  - 4. H

Question ID : 26433079057

Status : **Not Attempted and Marked For Review**

Chosen Option : --

Q.9 Select the option that is related to the third word in the same way as the second word is related to the first word.  
(The words must be considered as meaningful English words and must not be related to each other based on the number of letters/number of consonants/vowels in the word)

India : New Delhi :: Australia : ?

- Ans
- 1. Melbourne
  - 2. Canberra
  - 3. Perth
  - 4. Sydney

Question ID : 26433079473

Status : **Answered**

Chosen Option : 4

Q.10 Which two signs should be interchanged to make the below equation mathematically correct?

$$24 \times 12 - 6 \div 40 + 20 = 28$$

- Ans
- 1. - and +
  - 2. ÷ and -
  - 3. + and ×
  - 4. + and ÷

Question ID : 264330117524

Status : **Answered**

Chosen Option : 2

Q.11 Which of the following numbers will replace the question mark (?) in the given series?  
3, 9, 21, 45, ?

- Ans
- 1. 156
  - 2. 93
  - 3. 178
  - 4. 134

Question ID : 26433082735

Status : **Answered**

Chosen Option : 2

Q.12 Select the option that is related to the fifth number in the same way as the second number is related to the first number and fourth number is related to the third number.  
2 : 2 :: 4 : 8 :: 8 : ?

- Ans  1. 20  
 2. 16  
 3. 32  
 4. 34

Question ID : 26433069431  
Status : Answered  
Chosen Option : 3

Q.13 In a certain code language, 'DRIVER' is written as 'JSETGX' and 'DURING' is written as 'SVEIPK'. How will 'DOLLAR' be written as in that language?

- Ans  1. LODRAL  
 2. MPETCN  
 3. MPERAL  
 4. RALLOD

Question ID : 26433090042  
Status : Not Answered  
Chosen Option : --

Q.14 Three statements are given, followed by three conclusions numbered I, II and III. Assuming the statements to be true, even if they seem to be at variance with commonly known facts, decide which of the conclusions logically follow(s) from the statements.

Statements:

No pen is a box.  
Some pens are chalks.  
All chalks are erasers.

Conclusions:

I. Some erasers are pens.  
II. Some chalks are not boxes.  
III. Some boxes are not erasers.

- Ans  1. Only conclusion III follows  
 2. Only conclusions II and III follow  
 3. Only conclusions I and II follow  
 4. All conclusions follow

Question ID : 26433090991  
Status : Answered  
Chosen Option : 2

Q.15 Which of the following terms will replace the question mark (?) in the given series?  
EPJY, GNKX, ILLW, ?, MHNU

- Ans  1. KKNV  
 2. LJNU  
 3. LJMU  
 4. KJMV

Question ID : 26433069444  
Status : Answered  
Chosen Option : 4

Q.16 Select the option that represents the correct order of the given words as they would appear in an English dictionary.

1. SPINY
2. SPINE
3. SPINACH
4. SPINNEY
5. SPIRIT
6. SPIKE

- Ans
- 1. 2, 5, 3, 4, 6, 1
  - 2. 6, 2, 5, 1, 4, 3
  - 3. 6, 3, 2, 4, 1, 5
  - 4. 3, 4, 5, 1, 2, 6

Question ID : 26433079379

Status : Answered

Chosen Option : 3

Q.17 Which two numbers(not digits) and two signs should be interchanged to make the given equation correct?

$$18 \div 3 - 30 + 15 \times 2 = -1$$

- Ans
- 1. 3 and 30;  $\times$  and  $+$
  - 2. 2 and 18;  $+$  and  $\times$
  - 3. 15 and 3;  $+$  and  $-$
  - 4. 18 and 15;  $+$  and  $-$

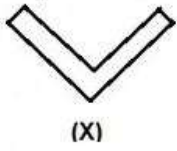
Question ID : 26433092746

Status : Answered

Chosen Option : 1

KD Job Updates

Q.18 Select the option figure in which the given figure (X) is embedded as its part  
(rotation is NOT allowed).



Ans

✓ 1.



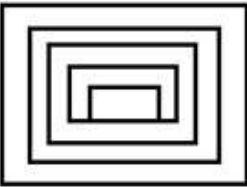
✗ 2.



✗ 3.

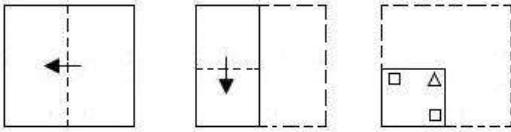


✗ 4.

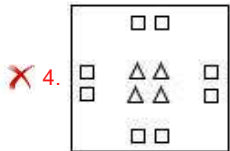
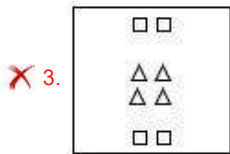
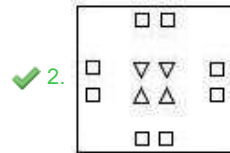
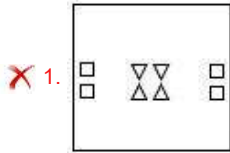


Question ID : 26433069536  
Status : Answered  
Chosen Option : 1

Q.19 A paper is folded and cut as shown below. How will it appear when unfolded?



Ans



Question ID : 26433090089  
 Status : Answered  
 Chosen Option : 2

Q.20 In a certain code language, 'SUBTLE' is written as '40CUMF', 'HANGER' is written as '90HFS', how will 'CLOTH' be written as in that language?

- Ans
- ✗ 1. 170TH
  - ✓ 2. 15PUI
  - ✗ 3. 17PUI
  - ✗ 4. 150TH

Question ID : 26433069649  
 Status : Answered  
 Chosen Option : 4

Section : Part-B-General Knowledge and General awareness

Q.1 Glaciers are generally found in \_\_\_\_\_.

- Ans
- ✗ 1. Plateaus
  - ✗ 2. Plains
  - ✓ 3. Mountains
  - ✗ 4. Rivers

Question ID : 264330115994  
 Status : Answered  
 Chosen Option : 3

**Q.2 National Rural Employment Guarantee Act assures how many days of employment every year to every rural household?**

- Ans**
- 1. 250 days
  - 2. 200 days
  - 3. 300 days
  - 4. 100 days

Question ID : 264330116086  
Status : Not Answered  
Chosen Option : --

**Q.3 The lower house of the state legislature is called \_\_\_\_\_.**

- Ans**
- 1. Vidhan Parishad
  - 2. Vidhan Sabha
  - 3. Lok Sabha
  - 4. Rajya Sabha

Question ID : 26433086675  
Status : Answered  
Chosen Option : 2

**Q.4 SEWA (Self-Employed Women's Association) Bank, a cooperative bank in Gujarat, was launched in India in \_\_\_\_\_.**

- Ans**
- 1. 1974
  - 2. 1894
  - 3. 1994
  - 4. 1874

Question ID : 264330115311  
Status : Answered  
Chosen Option : 3

**Q.5 Fundamental Duties of the Indian Constitution are adopted from which country?**

- Ans**
- 1. United States of America
  - 2. Germany
  - 3. Britain
  - 4. USSR (Now Russia)

Question ID : 264330115629  
Status : Answered  
Chosen Option : 4

Q.6 सातवाहन \_\_\_\_\_ भारत में एक शक्तिशाली राजवंश थे।

- Ans
- 1. पूर्वी
  - 2. उत्तरी
  - 3. दक्षिण
  - 4. पश्चिम

Question ID : 264330115464  
Status : Answered  
Chosen Option : 3

Q.7 In which of the following places was the Indian Association founded in colonial India?

- Ans
- 1. Poona
  - 2. Calcutta
  - 3. Surat
  - 4. Lucknow

Question ID : 26433089890  
Status : Answered  
Chosen Option : 2

Q.8 Green Revolution increased the yield of food crops, and thus contributed \_\_\_\_\_ to the Indian Economy.

- Ans
- 1. adverse
  - 2. negative
  - 3. positive
  - 4. neutral

Question ID : 264330115424  
Status : Answered  
Chosen Option : 3

Q.9 Yeast and hydrogen peroxide create \_\_\_\_\_.

- Ans
- 1. oxygen
  - 2. oxygen monoxide
  - 3. carbon dioxide
  - 4. carbon

Question ID : 264330115200  
Status : Answered  
Chosen Option : 2

**Q.10 Which Union Minister of Government of India inaugurated the 'India Chem 2022', in November 2022?**

- Ans  1. Rajnath Singh  
 2. Mansukh Mandaviya  
 3. Kiren Rijju  
 4. Rajeev Chandrashekhar

Question ID : 264330114962  
Status : Not Answered  
Chosen Option : --

**Q.11 Who became the new Chief Minister of Uttarakhand after elections in February 2022?**

- Ans  1. Bhupendra Rajnikant Patel  
 2. Jai Ram Thakur  
 3. Pushkar Singh Dhama  
 4. Pramod Sawant

Question ID : 264330115014  
Status : Answered  
Chosen Option : 3

**Q.12 How many time has India won the Men's Hockey World Cup?**

- Ans  1. 4  
 2. 2  
 3. 1  
 4. 0

Question ID : 264330116305  
Status : Answered  
Chosen Option : 2

**Q.13 Which city smart city bus project has won the India Smart Cities Award (ISAC) 2020 in the Urban Mobility category.**

- Ans  1. Indore  
 2. Aurangabad  
 3. Pune  
 4. Agra

Question ID : 264330115558  
Status : Answered  
Chosen Option : 2



Q.14 Yaoshang festival which is famous in Manipur is celebrated for \_\_\_\_ days.

- Ans  1. four  
 2. three  
 3. two  
 4. five

Question ID : 264330115127  
Status : Not Answered  
Chosen Option : --

Q.15 Who among the following is related with Chhau dance?

- Ans  1. Vidushi K.S. Jayalakshmi  
 2. Mahaboob Subhani  
 3. Suchitra Ella  
 4. Gopal Prasad Dubey

Question ID : 264330115888  
Status : Not Answered  
Chosen Option : --

Q.16 उपभोक्ता संरक्षण अधिनियम 2019 के अनुसार, एक ई-कॉमर्स इकाई भारतीय कंपनी अधिनियम के अनुसार निगमित कंपनी है और यह अनुपालन सुनिश्चित करने के लिए एक \_\_\_\_\_ नियुक्त करेगी।

- Ans  1. अधीनस्थ  
 2. कनिष्ठ कर्मचारी  
 3. सुलह अधिकारी  
 4. नोडल अधिकारी

Question ID : 264330116234  
Status : Answered  
Chosen Option : 4

Q.17 The dimension of the Hockey field is \_\_\_\_\_.

- Ans  1. 95m long and 60m wide  
 2. 96m long and 55m wide  
 3. 90m long and 50m wide  
 4. 91.4m long and 55m wide

Question ID : 264330115948  
Status : Answered  
Chosen Option : 3

Q.18 Which of the following folk dance is performed mainly in Chhattisgarh?

- Ans  1. Raut  
 2. Kalbelia  
 3. Bhangra  
 4. Roudra

Question ID : 26433071421  
Status : Answered  
Chosen Option : 1

Q.19 \_\_\_\_\_ are located on the 17th group on the periodic table.

- Ans  1. Halogens  
 2. Noble Gases  
 3. Chalcogens  
 4. Boron

Question ID : 264330115181  
Status : Answered  
Chosen Option : 2

Q.20 Which crops benefited more from the green revolution?

- Ans  1. Food grains  
 2. Vegetables  
 3. Oilseeds  
 4. Pulses

Question ID : 26433054631  
Status : Answered  
Chosen Option : 2

Section : Part-C-Elementary Mathematics

Q.1 एक वस्तु को ₹900 में बेचने पर अर्जित लाभ उसी वस्तु को ₹450 में बेचने पर हुई हानि का दोगुना है। 25% लाभ कमाने के लिए वस्तु को किस मूल्य पर बेचा जाना चाहिए?

- Ans  1. ₹950  
 2. ₹650  
 3. ₹750  
 4. ₹850

Question ID : 26433075878  
Status : Answered  
Chosen Option : 3

Q.2 A principal becomes ₹19,683 in 3 years at 8 percent per annum compound interest, compounding annually. What is the principal?

- Ans
- 1. ₹16,825
  - 2. ₹14,825
  - 3. ₹15,625
  - 4. ₹13,526

Question ID : 26433079885  
Status : Answered  
Chosen Option : 1

Q.3 At 46 km/h and 36 km/h, two trains of equal length are travelling in the same direction on parallel lines. What is the length of each train if the quicker train passes the slower train in 36 seconds?

- Ans
- 1. 47 metres
  - 2. 50 metres
  - 3. 44 metres
  - 4. 41 metres

Question ID : 26433076331  
Status : Not Answered  
Chosen Option : --

Q.4 The average age of 30 men is 25 years. 5 new men of an average age of 30 years joined them. Find the average age of all the men put together.

- Ans
- 1.  $26\frac{5}{7}$  years
  - 2.  $27\frac{5}{7}$  years
  - 3.  $25\frac{5}{7}$  years
  - 4.  $28\frac{5}{7}$  years

Question ID : 26433076303  
Status : Not Answered  
Chosen Option : --

Q.5 The population of a village during the first year increases by 5% and during the second year it diminishes by 5%. At the end of the second year its population was 9975. What was the population at the beginning of the first year?

- Ans
- 1. 9500
  - 2. 10000
  - 3. 9000
  - 4. 10500

Question ID : 26433075099  
Status : Answered  
Chosen Option : 2

Q.6 If the length, breadth, and height of a cuboidal box are 24 cm, 16 cm, and 12 cm, respectively, then the volume of the box is:

- Ans
- 1.  $4612 \text{ cm}^3$
  - 2.  $4632 \text{ cm}^3$
  - 3.  $4608 \text{ cm}^3$
  - 4.  $4644 \text{ cm}^3$

Question ID : 26433090307  
Status : Answered  
Chosen Option : 3

Q.7 If goods are purchased for Rs.600 and one fifth is sold at a loss of 20%, at what gain percent should the remainder be sold so as to gain 30% on the whole transaction?

- Ans
- 1. 40%
  - 2. 22%
  - 3. 42.5%
  - 4. 22.5%

Question ID : 26433081021  
Status : Answered  
Chosen Option : 3

Q.8 What is the total surface area of a hemisphere of diameter 7cm? Take  $\pi = \frac{22}{7}$

- Ans
- 1.  $77 \text{ cm}^2$
  - 2.  $98 \text{ cm}^2$
  - 3.  $87.5 \text{ cm}^2$
  - 4.  $115.5 \text{ cm}^2$

Question ID : 26433076250  
Status : Answered  
Chosen Option : 1

Q.9 Find the HCF of 0.25, 2.08 and 8.1.

- Ans
- 1. 0.01
  - 2. 0.1
  - 3. 0.05
  - 4. 0.02

Question ID : 26433082589  
Status : Answered  
Chosen Option : 3

**Q.10** The salary of an employee is first increased by 15% and then it is decreased by 25%.  
What is the percentage increase or decrease in his salary?

- Ans
- 1. 13.75% decrease
  - 2. 12.89% decrease
  - 3. 11.23% increase
  - 4. 14% increase

Question ID : 26433082710  
Status : Not Answered  
Chosen Option : --

**Q.11** A single discount equivalent to 5%, 10%, 15% and 20% is:

- Ans
- 1. 42.76%
  - 2. 41.86%
  - 3. 32.88%
  - 4. 36.92%

Question ID : 26433080222  
Status : Answered  
Chosen Option : 2

**Q.12** Mohan and Ramesh together can do a piece of work in 6 days, and Mohan alone can do it in 10 days. In how many days can Ramesh alone do the same work?

- Ans
- 1. 7.5
  - 2. 11.25
  - 3. 8
  - 4. 15

Question ID : 26433076206  
Status : Answered  
Chosen Option : 3

**Q.13** Find the greatest number by which when numbers 47, 95 and 187 are divided, leave the same remainder in each case.

- Ans
- 1. 6
  - 2. 8
  - 3. 2
  - 4. 4

Question ID : 26433082342  
Status : Answered  
Chosen Option : 3

Q.14 Mohan and Sohan invested ₹6,000 and ₹8,000 respectively in a property simultaneously and after 6 months Sohan withdraws his invested amount. What is the ratio of money received by Mohan and Sohan respectively at the end of one year?

- Ans
- 1. 4:3
  - 2. 2:3
  - 3. 3:4
  - 4. 3:2

Question ID : 26433075672  
Status : Not Answered  
Chosen Option : --

Q.15 Anit can do a piece of work in 77 days. Ram can do the same work in 11 days. Ram and Anit start working together but Ram left the work 3 days before the completion of the work. Find the approximate number of days in which the work is completed.

- Ans
- 1. 17 days
  - 2. 11 days
  - 3. 14 days
  - 4. 12 days

Question ID : 264330116918  
Status : Answered  
Chosen Option : 2

Q.16 A milkman bought 45 litres of milk and mixed 15 litres of water in it. If the price per litre of the mixture becomes ₹50, then what is the cost price of the milk per litre? (water is available free of cost)

- Ans
- 1. ₹61  $\frac{2}{3}$
  - 2. ₹34  $\frac{2}{3}$
  - 3. ₹33  $\frac{2}{3}$
  - 4. ₹66  $\frac{2}{3}$

Question ID : 26433076395  
Status : Not Answered  
Chosen Option : --

Q.17 Vidhi gave Radha ₹8,000 on compound interest for 2 years at 5% per annum, compounding annually. How much loss would Vidhi have suffered had she given it to Radha for 2 years at 5% per annum on simple interest?

- Ans
- 1. ₹12
  - 2. ₹18
  - 3. ₹20
  - 4. ₹15

Question ID : 26433080124  
Status : Answered  
Chosen Option : 2

Q.18 There are 50 students in a class. If the ratio of the number of boys to the girls is 16 : 9, then what is the mean proportional between the number of boys and girls in the school?

- Ans
- 1. 16
  - 2. 22
  - 3. 36
  - 4. 24

Question ID : 26433082388  
Status : Answered  
Chosen Option : 3

Q.19 A car is travelling at a uniform speed of 51 km/h. The distance travelled by the car from 10:40 a.m. to 1:00 p.m. is:

- Ans
- 1. 125 km
  - 2. 119 km
  - 3. 100 km
  - 4. 115 km

Question ID : 26433081591  
Status : Not Answered  
Chosen Option : --

Q.20 Dinesh offers his customers a discount of 15% on a raincoat and he still makes a profit of 25%. What is the actual cost of the raincoat marketed for Rs.800?

- Ans
- 1. Rs.540
  - 2. Rs.546
  - 3. Rs.544
  - 4. Rs.542

Question ID : 26433082976  
Status : Answered  
Chosen Option : 1

Q.1 Parts of the following sentence have been underlined and given as options. Select the option that contains an error.

We all know that sugar and honey tastes very sweet.

- Ans
- 1. sweet
  - 2. know
  - 3. tastes
  - 4. all

Question ID : 26433089370  
Status : Answered  
Chosen Option : 3

Q.2 Select the most appropriate option to fill in the blank as synonym for the underlined word.

The most arrogant employee in his company was sacked by the boss. No one could tolerate his \_\_\_\_\_ nature.

- Ans
- 1. pricey
  - 2. plain
  - 3. dicey
  - 4. haughty

Question ID : 26433094735  
Status : Answered  
Chosen Option : 4

Q.3 Select the INCORRECTLY spelt word.

- Ans
- 1. Venerate
  - 2. Viceregal
  - 3. Retinal
  - 4. Dalmation

Question ID : 26433073761  
Status : Answered  
Chosen Option : 2

Q.4 Select the most appropriate ANTONYM of the given word.

Revive

- Ans
- 1. Revolve
  - 2. Rejuvenate
  - 3. Destroy
  - 4. Incline

Question ID : 26433090798  
Status : Answered  
Chosen Option : 3



**Q.5** Select the most appropriate option that can substitute the underlined segment in the given sentence. If there is no need to substitute it, select 'No substitution required'.

Nithi was not feeling well, yet she decide to go to work.

- Ans
- 1. No substitution required
  - 2. yet she decided to go to work
  - 3. or she decided to go for work
  - 4. yet she have decided to go to work

Question ID : 26433091872  
Status : Answered  
Chosen Option : 2

**Q.6** Substitute the underlined word segment with most appropriate idiom.

They had to cancel their trip at the last minute due to bad weather.

- Ans
- 1. at sixes and sevens
  - 2. at somebody's beck and call
  - 3. at a stone's throw
  - 4. at the eleventh hour

Question ID : 26433084693  
Status : Not Answered  
Chosen Option : --

**Q.7** Select the most appropriate synonym of the given word.

Secure

- Ans
- 1. Secret
  - 2. Independent
  - 3. Safe
  - 4. Comfortable

Question ID : 26433088130  
Status : Answered  
Chosen Option : 3

**Q.8** Select the most appropriate option that can substitute the underlined segment in the given sentence.

The door which connecting the two offices is kept locked.

- Ans
- 1. connects
  - 2. does connecting
  - 3. can connecting
  - 4. has connecting

Question ID : 26433088829  
Status : Answered  
Chosen Option : 3

Q.9 Select the most appropriate option that can substitute the underlined segment in the given sentence.

After a long journey I was looking forward to sleep on a comfortable bed.

- Ans  1. sleeping in a  
 2. sleep into a  
 3. sleeps on a  
 4. sleep over a

Question ID : 264330101306  
Status : Answered  
Chosen Option : 1

Q.10 Select the most appropriate synonym of the given word.

Objective

- Ans  1. Subjective  
 2. Purpose  
 3. Tyrannical  
 4. Heartfelt

Question ID : 26433073983  
Status : Answered  
Chosen Option : 2

Q.11 Select the most appropriate option to fill in the blank.

Soumyashree, while talking on the topic, could not \_\_\_\_\_ the interview board.

- Ans  1. impress  
 2. conceive  
 3. stabilise  
 4. permeate

Question ID : 26433073790  
Status : Not Answered  
Chosen Option : --

Q.12 Select the most appropriate ANTONYM of the given word.

Esteem

- Ans  1. Notice  
 2. Value  
 3. Regret  
 4. Condemn

Question ID : 26433090788  
Status : Not Answered  
Chosen Option : --

Q.13 Select the most appropriate meaning of the given idiom.

Get a second wind

- Ans
- 1. Have less energy and be extremely tired
  - 2. Having less energy after resting
  - 3. Have two different choices
  - 4. Have renewed energy after having been tired

Question ID : 26433070652  
Status : Answered  
Chosen Option : 3

Q.14 Select the most appropriate ANTONYM of the word given in brackets to fill in the blank.

The keeper had no intention to \_\_\_\_\_ (attend) the goal, but the ball was hit too hard to be stopped.

- Ans
- 1. believe
  - 2. bring
  - 3. blow
  - 4. miss

Question ID : 26433089748  
Status : Answered  
Chosen Option : 4

Q.15 Select the most appropriate synonym of the given word to fill in the blank in the sentence.

Elaborate

A/an \_\_\_\_\_ water clock depicting zodiac signs is present in the city museum.

- Ans
- 1. beautiful
  - 2. resonant
  - 3. divulging
  - 4. intricate

Question ID : 26433060557  
Status : Answered  
Chosen Option : 1

**Comprehension:**

In the following passage, some words have been deleted. Read the passage carefully and select the most appropriate option to fill in each blank.

People who hitchhike talk about (1)\_\_\_\_\_ experiences in the course of their journeys. While there are (2)\_\_\_\_\_ bitter experiences, most of the trips are pleasant. What comes out as a common point worth mentioning (3)\_\_\_\_\_ the goodness that most drivers and riders exhibit. The (4)\_\_\_\_\_ rendered by them not just in giving them a ride but in also sponsoring food along the way. Faith in humanity and (5)\_\_\_\_\_ wins in the bargain.

**SubQuestion No : 16**

**Q.16 Select the most appropriate option to fill in blank number 1.**

- Ans  1. worried  
 2. varied  
 3. conversant  
 4. emptied

Question ID : 26433091776

Status : Answered

Chosen Option : 3

**Comprehension:**

In the following passage, some words have been deleted. Read the passage carefully and select the most appropriate option to fill in each blank.

People who hitchhike talk about (1)\_\_\_\_\_ experiences in the course of their journeys. While there are (2)\_\_\_\_\_ bitter experiences, most of the trips are pleasant. What comes out as a common point worth mentioning (3)\_\_\_\_\_ the goodness that most drivers and riders exhibit. The (4)\_\_\_\_\_ rendered by them not just in giving them a ride but in also sponsoring food along the way. Faith in humanity and (5)\_\_\_\_\_ wins in the bargain.

**SubQuestion No : 17**

**Q.17 Select the most appropriate option to fill in blank number 2.**

- Ans  1. such  
 2. much  
 3. lot  
 4. few

Question ID : 26433091777

Status : Answered

Chosen Option : 4

**Comprehension:**

In the following passage, some words have been deleted. Read the passage carefully and select the most appropriate option to fill in each blank.

People who hitchhike talk about (1)\_\_\_\_\_ experiences in the course of their journeys. While there are (2)\_\_\_\_\_ bitter experiences, most of the trips are pleasant. What comes out as a common point worth mentioning (3)\_\_\_\_\_ the goodness that most drivers and riders exhibit. The (4)\_\_\_\_\_ rendered by them not just in giving them a ride but in also sponsoring food along the way. Faith in humanity and (5)\_\_\_\_\_ wins in the bargain.

**SubQuestion No : 18**

**Q.18 Select the most appropriate option to fill in blank number 3.**

Ans  1. are

2. am

3. is

4. on

Question ID : 26433091778

Status : Answered

Chosen Option : 4

**Comprehension:**

In the following passage, some words have been deleted. Read the passage carefully and select the most appropriate option to fill in each blank.

People who hitchhike talk about (1)\_\_\_\_\_ experiences in the course of their journeys. While there are (2)\_\_\_\_\_ bitter experiences, most of the trips are pleasant. What comes out as a common point worth mentioning (3)\_\_\_\_\_ the goodness that most drivers and riders exhibit. The (4)\_\_\_\_\_ rendered by them not just in giving them a ride but in also sponsoring food along the way. Faith in humanity and (5)\_\_\_\_\_ wins in the bargain.

**SubQuestion No : 19**

**Q.19 Select the most appropriate option to fill in blank number 4.**

Ans  1. brevity

2. stringency

3. hospitality

4. conformity

Question ID : 26433091779

Status : Answered

Chosen Option : 2

**Comprehension:**

In the following passage, some words have been deleted. Read the passage carefully and select the most appropriate option to fill in each blank.

People who hitchhike talk about (1)\_\_\_\_\_ experiences in the course of their journeys. While there are (2)\_\_\_\_\_ bitter experiences, most of the trips are pleasant. What comes out as a common point worth mentioning (3)\_\_\_\_\_ the goodness that most drivers and riders exhibit. The (4)\_\_\_\_\_ rendered by them not just in giving them a ride but in also sponsoring food along the way. Faith in humanity and (5)\_\_\_\_\_ wins in the bargain.

**SubQuestion No : 20**

**Q.20** Select the most appropriate option to fill in blank number 5.

- Ans  1. consciousness  
 2. humaneness  
 3. frailty  
 4. animosity

Question ID : 26433091780  
Status : Answered  
Chosen Option : 1

## Section : Part-D-Hindi

**Q.1** 'अपना \_\_\_\_\_ सीधा करना' इस मुहावरे को पूरा करें।

- Ans  1. मतलब  
 2. कमर  
 3. उल्लू  
 4. दिमाग

Question ID : 26433066815  
Status : Not Answered  
Chosen Option : --

**Q.2** निम्न वाक्य में रेखांकित शब्द के लिए विकल्पों में कौन सा शब्द सर्वाधिक उपयुक्त होगा?  
'मैंने तलवार द्वारा शत्रु को मार दिया।'

- Ans  1. वह  
 2. को  
 3. से  
 4. ने

Question ID : 26433066713  
Status : Not Answered  
Chosen Option : --

Q.3 निम्न शब्द के पर्यायवाची शब्द का किस वाक्य में प्रयोग किया गया है?  
पृथ्वी

- Ans  1. वसुधा हरी-भरी है।  
 2. सरिता हरी-भरी है।  
 3. किसलय हरी-भरी है।  
 4. भागीरथी बड़ी है।

Question ID : 26433066935  
Status : Not Answered  
Chosen Option : --

Q.4 'तुम्हारा गांव किधर को है?' इस वाक्य में अशुद्धि पहचाने-

- Ans  1. किधर को  
 2. गांव  
 3. तुम्हारा  
 4. है

Question ID : 26433091302  
Status : Not Answered  
Chosen Option : --

Q.5 निम्न वाक्यांश के लिए सही वर्तनी वाले उपयुक्त एक शब्द का चयन कीजिए।  
जिसे ईश्वर में विश्वास हो

- Ans  1. आस्तिख  
 2. आप्तिक  
 3. आशितक  
 4. आस्तिक

Question ID : 26433070087  
Status : Not Answered  
Chosen Option : --

Q.6 दिए गए मुहावरे में रेखांकित अंश के स्थान पर सबसे उपयुक्त विकल्प कौन-सा होगा?  
'अंधों में काना रानी'

- Ans  1. दोस्त  
 2. राजा  
 3. नौकर  
 4. महाराजा

Question ID : 26433066738  
Status : Not Answered  
Chosen Option : --

Q.7 यह हॉल पंडित समाज के लिए आरक्षित है।  
उपरोक्त वाक्य में रेखांकित पद के स्थान पर निम्न में से कौन सा शब्द आ सकता है?

- Ans
- 1. मूर्ख
  - 2. शिक्षित
  - 3. बुद्ध
  - 4. गरीब

Question ID : 26433079174  
Status : Not Answered  
Chosen Option : --

Q.8 नीचे दिए शब्द के लिए उचित वाक्यांश दिए गए विकल्पों में से चुनिए-  
निरंकुश

- Ans
- 1. जिस पर किसी प्रकार का नियंत्रण न हो
  - 2. जिस पर नियंत्रण किया गया हो
  - 3. जिसे आशा न रह गई हो
  - 4. जिसका कोई आकार न हो

Question ID : 26433062392  
Status : Not Answered  
Chosen Option : --

Q.9 निम्नलिखित में से शुद्ध वाक्य का चयन कीजिए।

- Ans
- 1. उसे शिमला जाना है।
  - 2. उसका शिमला जाना है।
  - 3. उससे शिमला जाना है।
  - 4. उसने शिमला जाना है।

Question ID : 26433066962  
Status : Not Answered  
Chosen Option : --

Q.10 "एक अच्छे निबंध में बुद्धि व हृदय का सामंजस्य होना चाहिए।"  
उक्त वाक्य में प्रयुक्त 'सामंजस्य' के स्थान पर उसके समानार्थी शब्द का प्रयोग निम्न में से किस वाक्य में  
किया गया है?

- Ans
- 1. एक अच्छे निबंध में बुद्धि व हृदय का मिश्रण होना चाहिए।
  - 2. एक अच्छे निबंध में बुद्धि व हृदय का सौष्ठव होना चाहिए।
  - 3. एक अच्छे निबंध में बुद्धि व हृदय का समन्वय होना चाहिए।
  - 4. एक अच्छे निबंध में बुद्धि व हृदय का समुदाय होना चाहिए।

Question ID : 26433067031  
Status : Not Answered  
Chosen Option : --



Q.11 'छत पर कौआ बोल रहा है।'  
उपरोक्त वाक्य में प्रयुक्त 'कौआ' शब्द का पर्याय क्या है?

- Ans
- 1. शिख
  - 2. काक
  - 3. खग
  - 4. पिक

Question ID : 26433080859  
Status : Not Answered  
Chosen Option : --

Q.12 'नकटा \_\_\_\_\_।'।  
उपर्युक्त वाक्य में रिक्त स्थान के लिए उपयुक्त विकल्प निम्न में से क्या होगा?

- Ans
- 1. का अर्थ होता है जिसका कद छोटा हो
  - 2. का अर्थ होता है जिसका नाम न हो
  - 3. का अर्थ होता है जिसकी नाक कटी हो
  - 4. का अर्थ होता है जिसका अंगूठा छोटा हो

Question ID : 26433067044  
Status : Not Answered  
Chosen Option : --

Q.13 निम्नलिखित वाक्य में रेखांकित शब्द के विलोम से वाक्य के रिक्त स्थान की पूर्ति कीजिए।  
अगर पूत कृपूत हो तो मात-पिता का जीवन व्यर्थ हो जाता है और यदि \_\_\_\_\_ हो तो सार्थक।

- Ans
- 1. सपूत
  - 2. विज्ञ
  - 3. उद्योगी
  - 4. दुपूत

Question ID : 26433085005  
Status : Not Answered  
Chosen Option : --

Q.14 'रेगिस्तान में \_\_\_\_\_ की सवारी बहुत मजेदार होती है।' इस वाक्य में रिक्त स्थान की पूर्ति शुद्ध शब्द द्वारा कीजिए।

- Ans
- 1. उंट
  - 2. ऊट
  - 3. ऊँट
  - 4. ऊख

Question ID : 26433069704  
Status : Not Answered  
Chosen Option : --

Q.15 निम्नलिखित विकल्पों में से कौन सा एक वाक्य क्रिया-विशेषण से सम्बन्ध रखता है?

- Ans
- 1. वे कमाते हैं।
  - 2. पिता का कर्तव्य है कि संतानों का पालन करे।
  - 3. हम पढ़ते हैं।
  - 4. किशन बहुत तेज दौड़ता है।

Question ID : 26433062956

Status : Not Answered

Chosen Option : --

**Comprehension:**

निम्नलिखित गद्यांश में से कुछ शब्द हटा दिए गए हैं। दिए गए विकल्पों की सहायता से रिक्त स्थानों की पूर्ति कीजिए। प्रत्येक संख्या के लिए उपयुक्त विकल्प का चयन कीजिए।

एक पाठशाला का 1. \_\_\_\_\_ था। मैं भी 2. \_\_\_\_\_ बुलाया गया था। वहाँ के प्रधान अध्यापक का एक मात्र पुत्र, जिसकी अवस्था आठ 3. \_\_\_\_\_ की थी, बड़े लाड़ से नुमाइश में मिस्टर हादी के कोल्हू की तरह दिखाया जा रहा था। उसका मुँह पीला था, आँखें सफेद 4. \_\_\_\_\_, दृष्टि भूमि से उठती नहीं थी। 5. \_\_\_\_\_ पूछे जा रहे थे। उनका वह उत्तर दे रहा था।

SubQuestion No : 16

Q.16 रिक्त स्थान 1 की पूर्ति के लिए सर्वाधिक उपयुक्त विकल्प का चयन कीजिए।

- Ans
- 1. वार्षिकोत्सव
  - 2. त्योहार
  - 3. मार्गोत्सव
  - 4. दैनिकोत्सव

Question ID : 26433079704

Status : Not Answered

Chosen Option : --

**Comprehension:**

निम्नलिखित गद्यांश में से कुछ शब्द हटा दिए गए हैं। दिए गए विकल्पों की सहायता से रिक्त स्थानों की पूर्ति कीजिए। प्रत्येक संख्या के लिए उपयुक्त विकल्प का चयन कीजिए।

एक पाठशाला का 1. \_\_\_\_\_ था। मैं भी 2. \_\_\_\_\_ बुलाया गया था। वहाँ के प्रधान अध्यापक का एक मात्र पुत्र, जिसकी अवस्था आठ 3. \_\_\_\_\_ की थी, बड़े लाड़ से नुमाइश में मिस्टर हादी के कोल्हू की तरह दिखाया जा रहा था। उसका मुँह पीला था, आँखें सफेद 4. \_\_\_\_\_, दृष्टि भूमि से उठती नहीं थी। 5. \_\_\_\_\_ पूछे जा रहे थे। उनका वह उत्तर दे रहा था।

SubQuestion No : 17

Q.17 रिक्त स्थान 2 की पूर्ति के लिए सर्वाधिक उपयुक्त विकल्प का चयन कीजिए।

- Ans
- 1. वहाँ
  - 2. सबमें
  - 3. कहाँ
  - 4. किधर

Question ID : 26433079705

Status : Not Answered

Chosen Option : --

**Comprehension:**

निम्नलिखित गद्यांश में से कुछ शब्द हटा दिए गए हैं। दिए गए विकल्पों की सहायता से रिक्त स्थानों की पूर्ति कीजिए। प्रत्येक संख्या के लिए उपयुक्त विकल्प का चयन कीजिए।

एक पाठशाला का 1. \_\_\_\_\_ था। मैं भी 2. \_\_\_\_\_ बुलाया गया था। वहाँ के प्रधान अध्यापक का एक मात्र पुत्र, जिसकी अवस्था आठ 3. \_\_\_\_\_ की थी, बड़े लाड़ से नुमाइश में मिस्टर हादी के कोल्हू की तरह दिखाया जा रहा था। उसका मुँह पीला था, आँखें सफेद 4. \_\_\_\_\_, दृष्टि भूमि से उठती नहीं थी। 5. \_\_\_\_\_ पूछे जा रहे थे। उनका वह उत्तर दे रहा था।

**SubQuestion No : 18**

Q.18 रिक्त स्थान 3 की पूर्ति के लिए सर्वाधिक उपयुक्त विकल्प का चयन कीजिए।

- Ans  1. वर्ष  
 2. घड़ी  
 3. दिन  
 4. पल

Question ID : 26433079706

Status : Not Answered

Chosen Option : --

**Comprehension:**

निम्नलिखित गद्यांश में से कुछ शब्द हटा दिए गए हैं। दिए गए विकल्पों की सहायता से रिक्त स्थानों की पूर्ति कीजिए। प्रत्येक संख्या के लिए उपयुक्त विकल्प का चयन कीजिए।

एक पाठशाला का 1. \_\_\_\_\_ था। मैं भी 2. \_\_\_\_\_ बुलाया गया था। वहाँ के प्रधान अध्यापक का एक मात्र पुत्र, जिसकी अवस्था आठ 3. \_\_\_\_\_ की थी, बड़े लाड़ से नुमाइश में मिस्टर हादी के कोल्हू की तरह दिखाया जा रहा था। उसका मुँह पीला था, आँखें सफेद 4. \_\_\_\_\_, दृष्टि भूमि से उठती नहीं थी। 5. \_\_\_\_\_ पूछे जा रहे थे। उनका वह उत्तर दे रहा था।

**SubQuestion No : 19**

Q.19 रिक्त स्थान 4 की पूर्ति के लिए सर्वाधिक उपयुक्त विकल्प का चयन कीजिए।

- Ans  1. होगी  
 2. थीं  
 3. होती  
 4. था

Question ID : 26433079707

Status : Not Answered

Chosen Option : --

**Comprehension:**

निम्नलिखित गद्यांश में से कुछ शब्द हटा दिए गए हैं। दिए गए विकल्पों की सहायता से रिक्त स्थानों की पूर्ति कीजिए। प्रत्येक संख्या के लिए उपयुक्त विकल्प का चयन कीजिए।

एक पाठशाला का 1. \_\_\_\_\_ था। मैं भी 2. \_\_\_\_\_ बुलाया गया था। वहाँ के प्रधान अध्यापक का एक मात्र पुत्र, जिसकी अवस्था आठ 3. \_\_\_\_\_ की थी, बड़े लाड़ से नुमाइश में मिस्टर हादी के कोल्हू की तरह दिखाया जा रहा था। उसका मुँह पीला था, आँखें सफेद 4. \_\_\_\_\_, दृष्टि भूमि से उठती नहीं थी। 5. \_\_\_\_\_ पूछे जा रहे थे। उनका वह उत्तर दे रहा था।

**SubQuestion No : 20**

Q.20 रिक्त स्थान 5 की पूर्ति के लिए सर्वाधिक उपयुक्त विकल्प का चयन कीजिए।

- Ans
- 1. रिश्ते
  - 2. बातें
  - 3. कहानी
  - 4. प्रश्न

Question ID : 26433079708

Status : Not Answered

Chosen Option : --

KD Job Updates