

Exam Date	22/11/2021
Exam Time :	9:00 AM - 10:30 AM
Subject	Constable GD 2021

Section : Part A General Intelligence and Reasoning

Q.1 Select the option that is related to the third word in the same way as the second word is related to the first word.

Bee : Buzz :: Hen : ?

- Ans
- 1. Chirp
 - 2. Cluck
 - 3. Bellow
 - 4. Squeak

Question ID : 65497834698
 Status : Answered
 Chosen Option : 2

Q.2 In a certain code language, 'RAJU' is written as 'WFOZ' and 'SITA' is written as 'XNYF'. How will 'MONU' be written in that language?

- Ans
- 1. RTSZ
 - 2. UTRZ
 - 3. SRSY
 - 4. TRSX

Question ID : 65497834695
 Status : Answered
 Chosen Option : 1

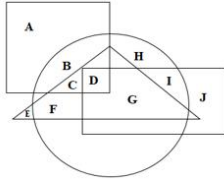
Q.3 Select the combination of letters that when sequentially placed in the blanks of the given series will complete the series.

N _ K _ T N O K _ T _ _ _ D T

- Ans
- 1. ODDNOK
 - 2. KDDNOK
 - 3. ODKNOK
 - 4. ONDNOK

Question ID : 65497834711
 Status : Answered
 Chosen Option : 1

Q.4 In the following Venn diagram, the triangle represents 'tall', the circle represents 'black eyes', the rectangle represents 'brown hair', and the square represents 'boys'. Which of the following letters represents tall boys with black eyes but NOT brown hair?



- Ans**
- ✓ 1. C
 - ✗ 2. F
 - ✗ 3. D
 - ✗ 4. G

Question ID : 65497834700
 Status : Answered
 Chosen Option : 1

Q.5 Select the correct mirror image of the given combination when the mirror is placed at 'XX' as shown.

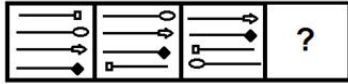


- Ans**
- ✗ 1. P Q R K H A
 - ✗ 2. P Q R H K A
 - ✓ 3. P Q R K H A
 - ✗ 4. P Q R H K A

Question ID : 65497834704
 Status : Answered
 Chosen Option : 3

KD Job Updates

Q.6 Select the figure from among the given options that can replace the question mark (?) in the following series.

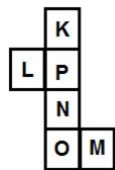


Ans

- 1.
- 2.
- 3.
- 4.

Question ID : 65497834713
 Status : Answered
 Chosen Option : 4

Q.7 A cube is made by folding the given sheet. In the cube so formed, which pair of letters will NOT be on the opposite faces?



- 1. K and N
- 2. O and M
- 3. L and M
- 4. P and O

KD Job Updates

Question ID : 65497834692
 Status : Answered
 Chosen Option : 2

Q.8 Select the option in which the given figure is embedded (rotation is NOT allowed).



Ans

✗ 1.



✓ 2.



✗ 3.



✗ 4.



Question ID : 65497834693

Status : Answered

Chosen Option : 3

Q.9 Study the given pattern carefully and select the number that can replace the question mark (?) in it.

34 38 7

46 38 5

84 ? 15

Ans

✗ 1. 83

✗ 2. 78

✓ 3. 87

✗ 4. 38

Question ID : 65497834707

Status : Not Answered

Chosen Option : --

Q.10 Four letter-clusters have been given, out of which three are alike in some manner and one is different. Select the letter-cluster that is different.

Ans

✗ 1. BEHK

✓ 2. HLOR

✗ 3. PSVY

✗ 4. KNQT

Question ID : 65497834701

Status : Answered

Chosen Option : 2

Q.11 In a certain code language, 'DICTIONARY' is coded as '20' and 'MOBILITY' is coded as '16'. How will 'TERMINATION' be coded in that language?

- Ans
- 1. 20
 - 2. 18
 - 3. 22
 - 4. 24

Question ID : 65497834702
 Status : Not Answered
 Chosen Option : --

Q.12 Select the number from among the given options that can replace the question mark (?) in the following series.

345, 334, 320, 303, 283, 260, ?

- Ans
- 1. 221
 - 2. 212
 - 3. 208
 - 4. 234

Question ID : 65497834712
 Status : Answered
 Chosen Option : 4

Q.13 Select the option that is related to the fourth number in the same way as the first number is related to the second number and the fifth number is related to the sixth number.

64 : 4 :: ? : 6 :: 100 : 5

- Ans
- 1. 108
 - 2. 188
 - 3. 228
 - 4. 144

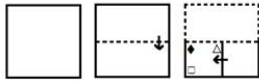
Question ID : 65497834690
 Status : Answered
 Chosen Option : 1

Q.14 Eight friends, P, Q, R, S, T, U, V and W, are watching a movie sitting in a line. T is sitting at one of the corners. Q is sitting between W and R. V is sitting between S and U. W is sitting to the immediate right of T. R is sitting to the immediate left of P. There are two persons between P and U. Who is sitting at the other corner?

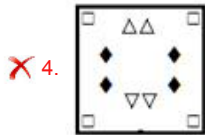
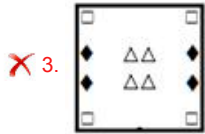
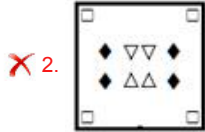
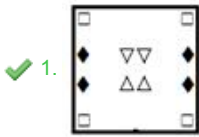
- Ans
- 1. U
 - 2. P
 - 3. R
 - 4. S

Question ID : 65497834689
 Status : Not Answered
 Chosen Option : --

Q.15 The sequence of folding a piece of paper and the manner in which the folded paper has been cut is shown in the following figures. How would this paper look when unfolded?



Ans



Question ID : 65497834709

Status : Answered

Chosen Option : 1

Q.16 Select the correct option that indicates the arrangement of the given words in the order in which they appear in an English dictionary.

1. Durable
2. Duty
3. Dubious
4. Duster
5. Dustbin

Ans ✗ 1. 3, 5, 1, 4, 2

✗ 2. 1, 3, 5, 4, 2

✗ 3. 3, 1, 4, 5, 2

✓ 4. 3, 1, 5, 4, 2

Question ID : 65497834710

Status : Answered

Chosen Option : 1

Q.17 In a certain code language, 'LEMON' is written as 'ELMNO'. How will 'CLUSTER' be written in that language?

Ans ✓ 1. CELRSTU

✗ 2. CLESRUT

✗ 3. LUCETRS

✗ 4. LCUTESR

Question ID : 65497834705

Status : Answered

Chosen Option : 4

Q.18 Select the option that is related to the third letter-cluster in the same way as the second letter-cluster is related to the first letter-cluster.

DKLH : GPSQ :: FRLP : ?

- Ans 1. IWSY
 2. JWRV
 3. JWSY
 4. IWRZ

Question ID : 65497834694
 Status : Answered
 Chosen Option : 1

Q.19 Read the given statements and conclusions carefully. Assuming that the information given in the statements is true, even if it appears to be at variance with commonly known facts, decide which of the given conclusions logically follow(s) from the statements.

Statements:

All enzymes are vitamins.

All vitamins are carbohydrates.

Conclusions:

I. All enzymes are carbohydrates.

II. No enzyme is a carbohydrate.

- Ans 1. Both conclusions I and II follow
 2. Either conclusion I or II follows
 3. Only conclusion II follows
 4. Only conclusion I follows

Question ID : 65497834706
 Status : Answered
 Chosen Option : 4

Q.20 There are six persons, M, N, P, Q, R and S, in a family. S is the paternal grandmother of M. P is the sister of R. N is the father of P. M is the only son of Q and R. N does not have any married daughter. How is M related to N?

- Ans 1. Father
 2. Brother
 3. Grandson
 4. Son

Question ID : 65497834696
 Status : Answered
 Chosen Option : 3

Q.21 Which two signs should be interchanged to make the given equation correct?

$$5 - 24 + 17 \times 16 \div 4 = 133$$

- Ans 1. + and +
 2. × and –
 3. × and +
 4. + and ×

Question ID : 65497834691
 Status : Answered
 Chosen Option : 2

Q.22 Select the number from among the given options that can replace the question mark (?) in the following series.

4, 5, 18, 19, 68, 69, ?

- Ans
- 1. 256
 - 2. 250
 - 3. 262
 - 4. 266

Question ID : 65497834703
Status : Not Answered
Chosen Option : --

Q.23 A fruit shop consists of only two types of fruits namely oranges and mangoes. The number of oranges is three times the number of mangoes. Which of the following numbers CANNOT represent the total number of fruits in the shop?

- Ans
- 1. 44
 - 2. 42
 - 3. 48
 - 4. 40

Question ID : 65497834708
Status : Answered
Chosen Option : 2

Q.24 Select the letter-cluster from among the given options that can replace the question mark (?) in the following series.

PEA, SJH, VOO, YTV, ?

- Ans
- 1. YBC
 - 2. CYB
 - 3. BYC
 - 4. CBY

Question ID : 65497834697
Status : Answered
Chosen Option : 3

Q.25 Five friends, Bhumika, Rashi, Shweta, Vibha and Arunima, are sitting in a row facing east. Bhumika is sitting between Vibha and Shweta. Rashi is second to the left of Shweta. Who is sitting at the south end?

- Ans
- 1. Arunima
 - 2. Rashi
 - 3. Shweta
 - 4. Vibha

Question ID : 65497834699
Status : Answered
Chosen Option : 2

Q.1 In which year did Motilal Nehru chair the committee to prepare the Constitution of India?

- Ans
- 1. 1944
 - 2. 1928
 - 3. 1934
 - 4. 1939

Question ID : 65497834721
Status : Answered
Chosen Option : 1

Q.2 Who among the following was the first Indian actor to be made a Chevalier of the Ordre des Arts et des Lettres?

- Ans
- 1. Sivaji Ganesan
 - 2. Rajnikanth
 - 3. Rajesh Khanna
 - 4. Dilip Kumar

Question ID : 65497834717
Status : Not Answered
Chosen Option : --

Q.3 Which among the following is NOT a human capital?

- Ans
- 1. Health care
 - 2. Education
 - 3. Training
 - 4. Land

Question ID : 65497834718
Status : Answered
Chosen Option : 4

Q.4 In which year was Communist Party of India formed?

- Ans
- 1. 1940
 - 2. 1943
 - 3. 1927
 - 4. 1925

Question ID : 65497834719
Status : Not Answered
Chosen Option : --

Q.5 The highest peak of Arunachal Pradesh state is _____.

- Ans
- 1. Kamet
 - 2. Trisuli
 - 3. Kangto
 - 4. Nun-Kun

Question ID : 65497834723
Status : Answered
Chosen Option : 1

Q.6 Where was the SAFF Women's Championship 2019 held?

- Ans 1. Nepal
 2. Bhutan
 3. India
 4. Bangladesh

Question ID : 65497834724
Status : Answered
Chosen Option : 3

Q.7 Who was the winner of the Jnanpith award in the year 2019?

- Ans 1. Shankha Ghosh
 2. Bhalchandra Nemade
 3. Akkitham Achuthan Namboothiri
 4. Chandrashekhara Kambara

Question ID : 65497834729
Status : Not Answered
Chosen Option : --

Q.8 Which of the following countries hosted the 16th G20 Summit in 2021?

- Ans 1. Japan
 2. Saudi Arabia
 3. Italy
 4. India

Question ID : 65497834722
Status : Answered
Chosen Option : 3

Q.9 What do you call the process of change in the base pair sequence of an organism?

- Ans 1. Pollination
 2. Decantation
 3. Mutation
 4. Ionisation

Question ID : 65497834716
Status : Answered
Chosen Option : 3

Q.10 Robert Hooke discovered the cell in 1665 by observing a _____ under a microscope.

- Ans 1. leaf
 2. grain of sand
 3. rock
 4. piece of cork

Question ID : 65497834736
Status : Answered
Chosen Option : 4

Q.11 Which newspaper edited by Bal Gangadhar Tilak, was one of the strongest critics of the British rule?

- Ans
- 1. Amrita Bazar Patrika
 - 2. Kesari
 - 3. The Tribune
 - 4. The Hindu

Question ID : 65497834735
Status : Answered
Chosen Option : 2

Q.12 Who among the following was an eminent scholar of Sanskrit, Hindi and Rajasthani beside Persian, Arabic and Turki?

- Ans
- 1. Abdul Rahim Khan-i-Khanan
 - 2. Birbal
 - 3. Akbar
 - 4. Ras Khan

Question ID : 65497834727
Status : Answered
Chosen Option : 1

Q.13 Who among the following Indian cricketers bowled 14 overs with a bandage around his fractured jaw against the West Indies at Antigua in 2002?

- Ans
- 1. Harbhajan Singh
 - 2. Ishant Sharma
 - 3. Zaheer Khan
 - 4. Anil Kumble

Question ID : 65497834733
Status : Answered
Chosen Option : 4

Q.14 In which of the following years was the Gajapati kingdom of Orissa established?

- Ans
- 1. 1567
 - 2. 1336
 - 3. 1467
 - 4. 1435

Question ID : 65497834720
Status : Answered
Chosen Option : 1

Q.15 When did Cyclone Amphan hit India?

- Ans
- 1. March 2020
 - 2. April 2020
 - 3. June 2020
 - 4. May 2020

Question ID : 65497834728
Status : Answered
Chosen Option : 3

Q.16 Which of the following Tiger Reserves was granted the 'Conservation Assured Tiger Standards' status in July 2021?

- Ans
- 1. Ranthambore Tiger Reserve
 - 2. Corbett Tiger Reserve
 - 3. Mudumalai Tiger Reserve
 - 4. Bandhavgarh Tiger Reserve

Question ID : 65497834738
Status : Answered
Chosen Option : 1

Q.17 Which of the following is NOT a cause of food and water contamination?

- Ans
- 1. Chemical runoff from factories
 - 2. Incorrect food storage
 - 3. Infectious organisms in the atmosphere
 - 4. Bites by stray animals

Question ID : 65497834715
Status : Answered
Chosen Option : 3

Q.18 हड़प्पा स्थल पर _____ में हलरेखाओं (Furrow) के निशान खोजे गए थे।

- Ans
- 1. लोथल
 - 2. कालीबंगा
 - 3. बनवाली
 - 4. धोलावीरा

Question ID : 65497834737
Status : Answered
Chosen Option : 4

Q.19 Under which Article of the Constitution of India shall the Governor of a State be appointed by the President by warrant under his hand and seal?

- Ans
- 1. Article 153
 - 2. Article 154
 - 3. Article 156
 - 4. Article 155

Question ID : 65497834725
Status : Not Answered
Chosen Option : --

Q.20 In which year was the Hindu Succession Act of 1956 amended to give equal right to father's property to daughters?

- Ans
- 1. 2005
 - 2. 2007
 - 3. 2001
 - 4. 2010

Question ID : 65497834734
Status : Not Answered
Chosen Option : --

Q.21 Which of the following is NOT an age-verification test method that makes an assessment based on hand and wrist radiographs?

- Ans
- 1. The Tanner-Whitehouse method
 - 2. The Greulich-Pyle method
 - 3. The FELS method
 - 4. The cervical vertebral maturation method

Question ID : 65497834726
Status : Answered
Chosen Option : 4

Q.22 The Hundru falls are formed by the river _____.

- Ans
- 1. Umngot
 - 2. Subarnarekha
 - 3. Tsangpo
 - 4. Teesta

Question ID : 65497834732
Status : Not Answered
Chosen Option : --

Q.23 Which of the following is NOT a service provided to its clients by banks in India?

- Ans
- 1. ECS
 - 2. RTGS
 - 3. NEFT
 - 4. URL

Question ID : 65497834731
Status : Answered
Chosen Option : 4

Q.24 Who among the following players did NOT win a gold medal at the Alexis Valentine International Boxing Tournament held in Nantes, France 2020?

- Ans
- 1. Ashish Kumar
 - 2. Sanjeet
 - 3. Amit Panghal
 - 4. Sumit Sangwan

Question ID : 65497834730
Status : Not Answered
Chosen Option : --

Q.25 Which of the following is a sword dance meant to depict the martial art tradition of the Kumaoni tribe?

- Ans
- 1. Kachchi Ghodi
 - 2. Gair
 - 3. Chholiya
 - 4. Chari

Question ID : 65497834714
Status : Answered
Chosen Option : 2

Q.1 If the radius of the base of a cylinder is increased by 20% and its height is decreased by $33\frac{1}{3}\%$, then what will be the change in percentage in its volume?

- Ans**
- 1. Decrease by 0.4%
 - 2. Increase by 2%
 - 3. Decrease by 4%
 - 4. Decrease by 2%

Question ID : **65497834758**
 Status : **Not Answered**
 Chosen Option : --

Q.2 A train travelling at a speed of 45 km/h crosses a house in 12 sec. What is the length of the train?

- Ans**
- 1. 150 m
 - 2. 10 m
 - 3. 230 m
 - 4. 180 m

Question ID : **65497834754**
 Status : **Answered**
 Chosen Option : 1

Q.3 The compound interest (in ₹, nearest to a rupee) on a sum of ₹7,500 at 24% p.a. for 3 months, interest compounded monthly, is:

- Ans**
- 1. 459
 - 2. 439
 - 3. 303
 - 4. 465

Question ID : **65497834757**
 Status : **Answered**
 Chosen Option : 1

Q.4 If $(a + b - c) : (b + c - a) : (a + c - b) = 4 : 5 : 9$, then $a - b : c - b : c - a =$

- Ans**
- 1. 4 : 1 : 5
 - 2. 5 : 1 : 4
 - 3. 1 : 4 : 5
 - 4. 4 : 5 : 1

Question ID : **65497834743**
 Status : **Not Answered**
 Chosen Option : --

Q.5 A mixture contains alcohol and water in the ratio of 3 : 4. On adding 8 litres of water, the ratio of alcohol to water becomes 5 : 8. The original quantity of the mixture (in litres) is:

- Ans**
- 1. 70
 - 2. 63
 - 3. 35
 - 4. 84

Question ID : 65497834756
Status : Answered
Chosen Option : 2

Q.6 X takes twice as much time as Y and thrice as much time as Z to finish a job. Working all together, they can finish it in 2 days. Y alone can finish the job in:

- Ans**
- 1. 14 days
 - 2. 10 days
 - 3. 12 days
 - 4. 6 days

Question ID : 65497834753
Status : Answered
Chosen Option : 4

Q.7 An iron is bought for ₹210. Decide its MRP so that after a discount of 5%, you still gain 90%.

- Ans**
- 1. ₹385.50
 - 2. ₹524
 - 3. ₹630
 - 4. ₹420

Question ID : 65497834751
Status : Answered
Chosen Option : 4

Q.8 The average of the marks scored by Amit in 5 subjects is 72. If the average of the marks scored in 3 of these subjects is 70, then what is the average of the marks in the remaining subjects?

- Ans**
- 1. 25
 - 2. 75
 - 3. 50
 - 4. 71

Question ID : 65497834740
Status : Answered
Chosen Option : 2

Q.9 Four numbers are in the ratio 2 : 3 : 5 : 7 and their HCF is 6. What is the sum of the squares of the largest and the smallest numbers?

- Ans**
- 1. 486
 - 2. 324
 - 3. 54
 - 4. 1908

Question ID : 65497834739
 Status : Answered
 Chosen Option : 4

Q.10 If P is 220% of Q, then what percentage of P + Q will Q be?

- Ans**
- 1. 37%
 - 2. 48.15%
 - 3. 31.25%
 - 4. 25%

Question ID : 65497834760
 Status : Answered
 Chosen Option : 2

Q.11 The value of $\left(\frac{2}{5} \text{ of } 7\frac{1}{2} \div 2\frac{1}{4}\right) + \left(5\frac{1}{2} \div 3\frac{2}{3} \text{ of } 6\right) - 1\frac{1}{3} \times \frac{5}{8}$ is:

- Ans**
- 1. $\frac{3}{2}$
 - 2. $\frac{1}{4}$
 - 3. $\frac{2}{3}$
 - 4. $\frac{3}{4}$

Question ID : 65497834761
 Status : Answered
 Chosen Option : 1

Q.12 An article was sold at $\frac{11}{8}$ times of its cost price. The profit per cent is:

- Ans**
- 1. 36.5%
 - 2. 35%
 - 3. 37.5%
 - 4. 36%

Question ID : 65497834746
 Status : Answered
 Chosen Option : 3

Q.13 In a transaction, the profit percentage is 48% of the cost. If the cost further increases by 20% but the selling price remains the same, how much is the decrease in the profit percentage?

- Ans**
- 1. 14.67%
 - 2. 24.67%
 - 3. 34.67%
 - 4. 24.0%

Question ID : 65497834748
Status : Answered
Chosen Option : 2

Q.14 A retailer gains 18% after allowing 12% discount on the cost price. If the cost price is ₹16,500, then what is the selling price?

- Ans**
- 1. ₹17,354.60
 - 2. ₹16,155.50
 - 3. ₹17,550
 - 4. ₹17,133.60

Question ID : 65497834755
Status : Answered
Chosen Option : 4

Q.15 A 243 m long train running at 60 km/h takes 42 seconds to cross a tunnel. The length (in m) of the tunnel is:

- Ans**
- 1. 457
 - 2. 467
 - 3. 477
 - 4. 447

Question ID : 65497834762
Status : Answered
Chosen Option : 1

Q.16 A sum of money is put on compound interest for 2 years at 20%. It would fetch ₹964 more if the interest was payable half-yearly than if it was payable yearly. Find the sum.

- Ans**
- 1. ₹40,000
 - 2. ₹80,000
 - 3. ₹60,000
 - 4. ₹70,000

Question ID : 65497834749
Status : Answered
Chosen Option : 1

Q.17 Find the least number of five digits which is exactly divisible by 18, 21 and 24.

- Ans
- 1. 10080
 - 2. 10286
 - 3. 11310
 - 4. 10060

Question ID : 65497834759
 Status : Answered
 Chosen Option : 1

Q.18 The perimeter of a circular garden is 506 m. The cost (in ₹) of levelling it at ₹14/ m² is:

(Take $\pi = \frac{22}{7}$)

- Ans
- 1. 251831
 - 2. 312581
 - 3. 285131
 - 4. 218531

Question ID : 65497834744
 Status : Not Answered
 Chosen Option : --

Q.19 If 10% of A = B, then B% of 20 is the same as:

- Ans
- 1. 2% of A
 - 2. 5% of A
 - 3. 3% of A
 - 4. 4% of A

Question ID : 65497834752
 Status : Answered
 Chosen Option : 1

Q.20

The value of $\frac{\frac{3}{7} \div \frac{3}{7} \times \frac{3}{7}}{\frac{3}{7} \div \frac{3}{7} \text{ of } \frac{3}{7}} - \frac{9}{49}$ is:

- Ans
- 1. $\frac{40}{49}$
 - 2. 0
 - 3. 1
 - 4. $\frac{9}{49}$

Question ID : 65497834745
 Status : Answered
 Chosen Option : 2

Q.21 What is the difference between the compound interest compounded annually and the simple interest on ₹5,000 at the rate of 8% per annum for 2 years?

- Ans**
- 1. ₹64
 - 2. ₹84
 - 3. ₹48
 - 4. ₹32

Question ID : 65497834742
Status : Not Answered
Chosen Option : --

Q.22 If $x : 2y = 4 : 9$ and $2 : x = 3 : 4$, then what is the value of y ?

- Ans**
- 1. 4
 - 2. 3
 - 3. 5
 - 4. 6

Question ID : 65497834741
Status : Answered
Chosen Option : 2

Q.23 A, B and C complete a work in 5 days, 6 days and 8 days, respectively. If they work together and get ₹2,950 for the work, how much amount does B get?

- Ans**
- 1. ₹1,200
 - 2. ₹1,000
 - 3. ₹1,150
 - 4. ₹1,050

Question ID : 65497834747
Status : Not Answered
Chosen Option : --

Q.24 A trader buys two articles A and B for ₹600. He sells A at 20% profit and B at 10% loss. If he gains 8% in the whole transaction, then the cost price (in ₹) of article A is:

- Ans**
- 1. 350
 - 2. 360
 - 3. 375
 - 4. 380

Question ID : 65497834763
Status : Answered
Chosen Option : 2

Q.25 The average weight of 8 people increases by 2.5 kg if a new person replaces one weighing 50 kg. What is the weight of the new person?

- Ans
- 1. 52 kg
 - 2. 58 kg
 - 3. 70 kg
 - 4. 72 kg

Question ID : 65497834750
Status : Answered
Chosen Option : 2

Section : Part D English

Q.1 Select the most appropriate ANTONYM of the given word.

Ample

- Ans
- 1. Enough
 - 2. Plenty
 - 3. Spare
 - 4. Scarce

Question ID : 65497834780
Status : Answered
Chosen Option : 2

Q.2 Select the option that can be used as a one-word substitute for the given group of words.

Handwritten book

- Ans
- 1. Draft
 - 2. Edition
 - 3. Manuscript
 - 4. Outline

Question ID : 65497834767
Status : Answered
Chosen Option : 3

Q.3 Select the most appropriate option to fill in the blank.

Hill stations like Darjeeling and Nainital offer _____ to weary tourists during summer.

- Ans
- 1. strain
 - 2. activity
 - 3. solace
 - 4. aid

Question ID : 65497834766
Status : Answered
Chosen Option : 3

Q.4 Select the option that can be used as a one-word substitute for the given group of words.

Something that can be carried easily

- Ans 1. Portable
 2. Convenient
 3. Handy
 4. Reachable

Question ID : 65497834781
Status : Answered
Chosen Option : 1

Q.5 Select the most appropriate option to fill in the blank.

The Sports Minister _____ the Badminton Association officials that all help will be given to them to conduct the tournament.

- Ans 1. committed
 2. ascertained
 3. assured
 4. demonstrated

Question ID : 65497834768
Status : Answered
Chosen Option : 3

Q.6 The following sentence has been split into four segments. Identify the segment that contains a grammatical error.

The photographer climb / the tree and took pictures / of the leopard / chasing its prey.

- Ans 1. The photographer climb
 2. the tree and took pictures
 3. of the leopard
 4. chasing its prey

Question ID : 65497834770
Status : Answered
Chosen Option : 1

Q.7 Select the most appropriate synonym of the given word.

Convert

- Ans 1. Dazzle
 2. Transform
 3. Radical
 4. Affect

Question ID : 65497834775
Status : Answered
Chosen Option : 2

Q.8 Select the option that can be used as a one-word substitute for the given group of words.

Fluent or persuasive in speaking or writing

- Ans
- 1. Presenter
 - 2. Magnificent
 - 3. Eloquent
 - 4. Persuader

Question ID : 65497834776
Status : Answered
Chosen Option : 3

Q.9 The following sentence has been split into four segments. Identify the segment that contains a grammatical error.

The Great Wall of China / is no long / a continuous structure / owing to erosion.

- Ans
- 1. a continuous structure
 - 2. is no long
 - 3. The Great Wall of China
 - 4. owing to erosion

Question ID : 65497834779
Status : Answered
Chosen Option : 2

Q.10 Select the INCORRECTLY spelt word.

- Ans
- 1. Solitary
 - 2. Individual
 - 3. Criteria
 - 4. Ledgible

Question ID : 65497834782
Status : Answered
Chosen Option : 1

Q.11 Select the most appropriate ANTONYM of the given word.

Opponent

- Ans
- 1. Supporter
 - 2. Professor
 - 3. Mentor
 - 4. Presenter

Question ID : 65497834772
Status : Answered
Chosen Option : 1

Q.12 Select the INCORRECTLY spelt word.

- Ans
- 1. Hostel
 - 2. Hold
 - 3. Hospitaliti
 - 4. Hoist

Question ID : 65497834765
Status : Answered
Chosen Option : 3

Q.13 Select the most appropriate synonym of the given word.

Similar

- Ans 1. Alien
 2. Alike
 3. Several
 4. Equal

Question ID : 65497834771
Status : Answered
Chosen Option : 2

Q.14 Select the most appropriate option that can substitute the underlined segment in the given sentence. If there is no need to substitute it, select 'No substitution required'.

If you are in trouble, Tommy is the friend who stands by you.

- Ans 1. No substitution required
 2. will stand by
 3. was standing by
 4. stood by

Question ID : 65497834777
Status : Answered
Chosen Option : 3

Q.15 Select the most appropriate meaning of the given idiom.

To pull a fast one on someone

- Ans 1. To drive very fast
 2. To cheat someone
 3. To win against someone
 4. To enchant someone

Question ID : 65497834778
Status : Answered
Chosen Option : 3

Q.16 Select the most appropriate option to fill in the blank.

If the neighbours had not _____ food, we might have starved.

- Ans 1. provided
 2. added
 3. stolen
 4. thrown

Question ID : 65497834783
Status : Answered
Chosen Option : 1

Q.17 Select the most appropriate option that can substitute the underlined segment in the given sentence. If there is no need to substitute it, select 'No substitution required'.

If I see a snake, I tried to catch it.

- Ans
- 1. was trying
 - 2. No substitution required
 - 3. will try to catch
 - 4. am trying

Question ID : 65497834764
Status : Answered
Chosen Option : 3

Q.18 Select the most appropriate option that can substitute the underlined segment in the given sentence. If there is no need to substitute it, select 'No substitution required'.

Indirect questions will be used while seeking information about an embarrassing subject.

- Ans
- 1. are used while seek information
 - 2. No substitution required
 - 3. are use while seeking information
 - 4. are used while seeking information

Question ID : 65497834769
Status : Answered
Chosen Option : 4

Q.19 Select the most appropriate meaning of the given idiom.

To kick the bucket

- Ans
- 1. To lose
 - 2. To play
 - 3. To die
 - 4. To fight

Question ID : 65497834773
Status : Answered
Chosen Option : 1

Q.20 Parts of the given sentence have been given as options. One of them contains a grammatical error. Select the option that has the error.

Rama's scores in the half-yearly examination are best than Raghu's scores.

- Ans
- 1. are best than
 - 2. Raghu's scores
 - 3. Rama's scores
 - 4. in the

Question ID : 65497834774
Status : Answered
Chosen Option : 1

Comprehension:

In the following passage, some words have been deleted. Read the passage carefully and select the most appropriate option to fill in each blank.

Pollution is the (1)_____ of the environment and the biggest problem across the globe. The major causes of pollution include (2)_____ use of motor vehicles, rapid industrialisation, increasing urbanisation, use of chemical fertilisers in agriculture and burning of fossil fuels. It has a (3)_____ effect on human health. Air pollution causes respiratory diseases and other diseases related to lungs. Noise pollution impairs the (4)_____ senses and causes stress. Water pollution pollutes water, which is mainly harmful for aquatic animals. The responsibility of (5)_____ the pollution is in the hands of human beings.

SubQuestion No : 21

Q.21 Select the most appropriate option to fill in blank no. 1.

- Ans 1. mixture
 2. contamination
 3. impure
 4. adulteration

Question ID : 65497834785

Status : Answered

Chosen Option : 4

Comprehension:

In the following passage, some words have been deleted. Read the passage carefully and select the most appropriate option to fill in each blank.

Pollution is the (1)_____ of the environment and the biggest problem across the globe. The major causes of pollution include (2)_____ use of motor vehicles, rapid industrialisation, increasing urbanisation, use of chemical fertilisers in agriculture and burning of fossil fuels. It has a (3)_____ effect on human health. Air pollution causes respiratory diseases and other diseases related to lungs. Noise pollution impairs the (4)_____ senses and causes stress. Water pollution pollutes water, which is mainly harmful for aquatic animals. The responsibility of (5)_____ the pollution is in the hands of human beings.

SubQuestion No : 22

Q.22 Select the most appropriate option to fill in blank no. 2.

- Ans 1. bulky
 2. slight
 3. compact
 4. massive

Question ID : 65497834786

Status : Answered

Chosen Option : 4

Comprehension:

In the following passage, some words have been deleted. Read the passage carefully and select the most appropriate option to fill in each blank.

Pollution is the (1)_____ of the environment and the biggest problem across the globe. The major causes of pollution include (2)_____ use of motor vehicles, rapid industrialisation, increasing urbanisation, use of chemical fertilisers in agriculture and burning of fossil fuels. It has a (3)_____ effect on human health. Air pollution causes respiratory diseases and other diseases related to lungs. Noise pollution impairs the (4)_____ senses and causes stress. Water pollution pollutes water, which is mainly harmful for aquatic animals. The responsibility of (5)_____ the pollution is in the hands of human beings.

SubQuestion No : 23

Q.23 Select the most appropriate option to fill in blank no. 3.

- Ans
- 1. safe
 - 2. risky
 - 3. threatened
 - 4. hazardous

Question ID : 65497834787

Status : Answered

Chosen Option : 4

Comprehension:

In the following passage, some words have been deleted. Read the passage carefully and select the most appropriate option to fill in each blank.

Pollution is the (1)_____ of the environment and the biggest problem across the globe. The major causes of pollution include (2)_____ use of motor vehicles, rapid industrialisation, increasing urbanisation, use of chemical fertilisers in agriculture and burning of fossil fuels. It has a (3)_____ effect on human health. Air pollution causes respiratory diseases and other diseases related to lungs. Noise pollution impairs the (4)_____ senses and causes stress. Water pollution pollutes water, which is mainly harmful for aquatic animals. The responsibility of (5)_____ the pollution is in the hands of human beings.

SubQuestion No : 24

Q.24 Select the most appropriate option to fill in blank no. 4.

- Ans
- 1. auditory
 - 2. audible
 - 3. audacious
 - 4. hearing

Question ID : 65497834788

Status : Answered

Chosen Option : 1

Comprehension:

In the following passage, some words have been deleted. Read the passage carefully and select the most appropriate option to fill in each blank.

Pollution is the (1)_____ of the environment and the biggest problem across the globe. The major causes of pollution include (2)_____ use of motor vehicles, rapid industrialisation, increasing urbanisation, use of chemical fertilisers in agriculture and burning of fossil fuels. It has a (3)_____ effect on human health. Air pollution causes respiratory diseases and other diseases related to lungs. Noise pollution impairs the (4)_____ senses and causes stress. Water pollution pollutes water, which is mainly harmful for aquatic animals. The responsibility of (5)_____ the pollution is in the hands of human beings.

SubQuestion No : 25

Q.25 Select the most appropriate option to fill in blank no. 5.

- Ans 1. minimal
 2. minimise
 3. minimum
 4. minimising

Question ID : 65497834789

Status : Answered

Chosen Option : 4

Section : Part D Hindi

Q.1 _____ समाज का दर्पण है - रिक्त स्थान की पूर्ति कीजिए-

- Ans 1. आलोचक
 2. गणित
 3. निवेदक
 4. साहित्य

Question ID : 65497834805

Status : Not Answered

Chosen Option : --

Q.2 सही वर्तनी वाले शब्द का चयन कीजिए।

- Ans 1. पारीश्रमीक
 2. पारिश्रमिक
 3. परीश्रमिक
 4. पारीश्रमिक

Question ID : 65497834790

Status : Not Answered

Chosen Option : --

Q.3 दिए गए शब्द का विलोम चुनें।

उर्वर

- Ans 1. उर्वरक
 2. ऊसर
 3. धूसर
 4. नीरस

Question ID : 65497834795

Status : Not Answered

Chosen Option : --

Q.4 दिये गये वाक्यांश के लिए एक शब्द दीजिये।

चिरकाल तक जीवित रहने वाला

- Ans 1. चिरंजीवी
 2. परजीवी
 3. चिरंतन
 4. परोपकारी

Question ID : 65497834797
 Status : Not Answered
 Chosen Option : --

Q.5 दिये गये वाक्य के किस भाग में त्रुटि है?

आज हम बजार चलेंगे।

- Ans 1. आज
 2. चलेंगे।
 3. बजार
 4. हम

Question ID : 65497834808
 Status : Not Answered
 Chosen Option : --

Q.6 दिए गए वाक्य में रेखांकित खंड को प्रतिस्थापित करने के लिए सबसे उपयुक्त विकल्प का चयन करें। यदि इसे प्रतिस्थापित करने की आवश्यकता नहीं है, तो विकल्प 'किसी बदलाव की आवश्यकता नहीं है' का चयन करें।

महापुरुषों के उपदेशों का अपने जीवन में सम्मान करो।

- Ans 1. पालन करो
 2. प्रयोग करो
 3. निषेध करो
 4. किसी बदलाव की आवश्यकता नहीं है।

Question ID : 65497834801
 Status : Not Answered
 Chosen Option : --

Q.7 उस विकल्प का चयन करें जो निम्न मुहावरे का अर्थ व्यक्त करता है।

आंखें चुराना

- Ans 1. नाराज होना
 2. विमुख होना
 3. अनदेखा करना
 4. प्यार होना

Question ID : 65497834802
 Status : Not Answered
 Chosen Option : --

Q.8 दिए गए वाक्य का वह भाग ज्ञात करें जिसमें कोई त्रुटि है। यदि कोई त्रुटि नहीं है, तो 'कोई त्रुटि नहीं है' चुनें।

बुद्धिमान व्यक्ति की प्रखर बुद्धि हर कार्य में परिलक्षित होती है।

- Ans 1. कोई त्रुटि नहीं है।
 2. हर कार्य में परिलक्षित होती है।
 3. बुद्धिमान व्यक्ति क
 4. प्रखर बु

Question ID : 65497834798
 Status : Not Answered
 Chosen Option : --

Q.9 'जिसमें चेतना न हो' वाक्यांश के लिए एक शब्द होगा-

- Ans 1. अचेतन
 2. चिरंतन
 3. मूर्ख
 4. चेतन

Question ID : 65497834803
 Status : Not Answered
 Chosen Option : --

Q.10 दिए गये वाक्यांश के लिए एक शब्द है-

जिस स्त्री को कोई संतान न हो सके

- Ans 1. अस्त्रेण
 2. बंध्या
 3. संतानहीन
 4. अभागी

Question ID : 65497834796
 Status : Not Answered
 Chosen Option : --

Q.11 'उल्लास' किसका पर्यायवाची है?

- Ans 1. भय
 2. क्रोध
 3. साहस
 4. आनंद

Question ID : 65497834809
 Status : Not Answered
 Chosen Option : --

Q.12 रिक्त स्थान की पूर्ति के लिए सबसे उपयुक्त शब्द का चयन करें।

हमें भारतीय होने पर _____ है।

- Ans 1. उन्माद
 2. घमंड
 3. गर्व
 4. दप

Question ID : 65497834804
 Status : Not Answered
 Chosen Option : --

Q.13 दिए गए वाक्य में रेखांकित खंड को प्रतिस्थापित करने के लिए सबसे उपयुक्त विकल्प का चयन करें। यदि इसे प्रतिस्थापित करने की आवश्यकता नहीं है, तो विकल्प 'किसी बदलाव की आवश्यकता नहीं है' का चयन करें।

उन्हें तात्कालिक आदेश से निलंबित कर दिये गया।

- Ans
- 1. आदेश से निलंबित कर दिये गये।
 - 2. आदेश से निलंबित कर दिया गया।
 - 3. आदेश से निलंबित करा दिये गया।
 - 4. किसी बदलाव की आवश्यकता नहीं है।

Question ID : 65497834793

Status : Not Answered

Chosen Option : --

Q.14 दिए गए वाक्य में रेखांकित खंड को प्रतिस्थापित करने के लिए सबसे उपयुक्त विकल्प का चयन करें। यदि इसे प्रतिस्थापित करने की आवश्यकता नहीं है, तो विकल्प 'किसी बदलाव की आवश्यकता नहीं है' का चयन करें।

मुझे अपने पर आत्मविश्वास है।

- Ans
- 1. अपने ऊपर आत्मविश्वास
 - 2. अपने में आत्मविश्वास
 - 3. अपने पर विश्वास
 - 4. किसी बदलाव की आवश्यकता नहीं है।

Question ID : 65497834800

Status : Not Answered

Chosen Option : --

Q.15 'निरर्थक' का विलोम शब्द होगा-

- Ans
- 1. सफल
 - 2. रक्षक
 - 3. सार्थक
 - 4. समर्थक

Question ID : 65497834806

Status : Not Answered

Chosen Option : --

Q.16 दिए गए वाक्य का वह भाग ज्ञात करें जिसमें कोई त्रुटि है। यदि कोई त्रुटि नहीं है, तो 'कोई त्रुटि नहीं है' चुनें।

यद्यपि उसके पास (1)\ उतना धन है तथापि (2)\ वह स्वस्थ नहीं है। (3)\ कोई त्रुटि नहीं है (4)

- Ans
- 1. 3
 - 2. 2
 - 3. 1
 - 4. 4

Question ID : 65497834794

Status : Not Answered

Chosen Option : --

Q.17 रिक्त स्थान की पूर्ति के लिए सबसे उपयुक्त शब्द का चयन करें।

थिएटर में कौन सा _____ खेला जा रहा है।

- Ans
- 1. नाटक
 - 2. सिनेमा
 - 3. पिकचर
 - 4. खेल

Question ID : 65497834792
Status : Not Answered
Chosen Option : --

Q.18 'बखिया उधेड़ना' मुहावरे का सही अर्थ क्या है?

- Ans
- 1. अत्यधिक क्रोध होना
 - 2. भेद खोलना
 - 3. कठिन कार्य करना
 - 4. प्रशंसा करना

Question ID : 65497834807
Status : Not Answered
Chosen Option : --

Q.19 दिए गए शब्द के समानार्थी शब्द का चयन करें।

भ्रमर

- Ans
- 1. जुगनू
 - 2. मक्खी
 - 3. भौरा
 - 4. तितली

Question ID : 65497834799
Status : Not Answered
Chosen Option : --

Q.20 सही वर्तनी वाले शब्द का चयन कीजिए।

- Ans
- 1. रुद्धिवादी
 - 2. रुद्धिवादि
 - 3. रुद्धिवादि
 - 4. रुद्धिवादी

Question ID : 65497834791
Status : Not Answered
Chosen Option : --

Comprehension:

दिए गए गद्यांश में से कुछ शब्द हटा दिए गए हैं। संबंधित प्रश्नों में प्रत्येक संख्या के लिए सबसे उपयुक्त विकल्प का चयन करें।

प्रकृति मनुष्य को ईश्वर का अनुपम (1) _____ है। प्रकृति सदा से मनुष्य की सहचरी रही है और अपने गुणों एवं सौंदर्य से मानव को तृप्त करती रही है। मनुष्य भी उसके (2) _____ रूप के प्रति खिंचा चला गया है, परंतु जैसे-जैसे मनुष्य के हाथों में विज्ञान की शक्ति आने लगी, उसने प्रकृति का दोहन किया और अपनी सहचरी प्रकृति को (3) _____ पहुँचाना आरंभ कर दिया। विज्ञान के बल पर वह स्वयं को सर्व-शक्तिमान समझने लगा और अपने ही (4) _____ की खाई खोदने लगा। बढ़ता हुआ प्रदूषण और प्राकृतिक असंतुलन इसी के परिणाम हैं। प्रकृति को नुकसान पहुँचाकर उसने समस्त मानव जाति को नुकसान पहुँचाया है। प्रकृति के साथ (5) _____ स्थापित करके ही मनुष्यता को बचाया जा सकता है।

SubQuestion No : 21

Q.21 गद्यांश के रिक्त स्थान (1) के लिए सर्वाधिक उपयुक्त शब्द होगा-

- Ans
- 1. अभिशाप
 - 2. रूप
 - 3. एहसास
 - 4. वरदान

Question ID : 65497834811

Status : Not Answered

Chosen Option : --

Comprehension:

दिए गए गद्यांश में से कुछ शब्द हटा दिए गए हैं। संबंधित प्रश्नों में प्रत्येक संख्या के लिए सबसे उपयुक्त विकल्प का चयन करें।

प्रकृति मनुष्य को ईश्वर का अनुपम (1) _____ है। प्रकृति सदा से मनुष्य की सहचरी रही है और अपने गुणों एवं सौंदर्य से मानव को तृप्त करती रही है। मनुष्य भी उसके (2) _____ रूप के प्रति खिंचा चला गया है, परंतु जैसे-जैसे मनुष्य के हाथों में विज्ञान की शक्ति आने लगी, उसने प्रकृति का दोहन किया और अपनी सहचरी प्रकृति को (3) _____ पहुँचाना आरंभ कर दिया। विज्ञान के बल पर वह स्वयं को सर्व-शक्तिमान समझने लगा और अपने ही (4) _____ की खाई खोदने लगा। बढ़ता हुआ प्रदूषण और प्राकृतिक असंतुलन इसी के परिणाम हैं। प्रकृति को नुकसान पहुँचाकर उसने समस्त मानव जाति को नुकसान पहुँचाया है। प्रकृति के साथ (5) _____ स्थापित करके ही मनुष्यता को बचाया जा सकता है।

SubQuestion No : 22

Q.22 गद्यांश के रिक्त स्थान (2) के लिए सर्वाधिक उपयुक्त शब्द होगा-

- Ans
- 1. आकर्षक
 - 2. अनाकर्षक
 - 3. निकृष्ट
 - 4. अभिशाप्त

Question ID : 65497834812

Status : Not Answered

Chosen Option : --

Comprehension:

दिए गए गद्यांश में से कुछ शब्द हटा दिए गए हैं। संबंधित प्रश्नों में प्रत्येक संख्या के लिए सबसे उपयुक्त विकल्प का चयन करें।

प्रकृति मनुष्य को ईश्वर का अनुपम (1) _____ है। प्रकृति सदा से मनुष्य की सहचरी रही है और अपने गुणों एवं सौंदर्य से मानव को तृप्त करती रही है। मनुष्य भी उसके (2) _____ रूप के प्रति खिंचा चला गया है, परंतु जैसे-जैसे मनुष्य के हाथों में विज्ञान की शक्ति आने लगी, उसने प्रकृति का दोहन किया और अपनी सहचरी प्रकृति को (3) _____ पहुँचाना आरंभ कर दिया। विज्ञान के बल पर वह स्वयं को सर्व-शक्तिमान समझने लगा और अपने ही (4) _____ की खाई खोदने लगा। बढ़ता हुआ प्रदूषण और प्राकृतिक असंतुलन इसी के परिणाम हैं। प्रकृति को नुकसान पहुँचाकर उसने समस्त मानव जाति को नुकसान पहुँचाया है। प्रकृति के साथ (5) _____ स्थापित करके ही मनुष्यता को बचाया जा सकता है।

SubQuestion No : 23

Q.23 गद्यांश के रिक्त स्थान (3) के लिए सर्वाधिक उपयुक्त शब्द होगा-

- Ans
- 1. लाभ
 - 2. सामर्थ्य
 - 3. सम्पन्नता
 - 4. हानि

Question ID : 65497834813

Status : Not Answered

Chosen Option : --

Comprehension:

दिए गए गद्यांश में से कुछ शब्द हटा दिए गए हैं। संबंधित प्रश्नों में प्रत्येक संख्या के लिए सबसे उपयुक्त विकल्प का चयन करें।

प्रकृति मनुष्य को ईश्वर का अनुपम (1) _____ है। प्रकृति सदा से मनुष्य की सहचरी रही है और अपने गुणों एवं सौंदर्य से मानव को तृप्त करती रही है। मनुष्य भी उसके (2) _____ रूप के प्रति खिंचा चला गया है, परंतु जैसे-जैसे मनुष्य के हाथों में विज्ञान की शक्ति आने लगी, उसने प्रकृति का दोहन किया और अपनी सहचरी प्रकृति को (3) _____ पहुँचाना आरंभ कर दिया। विज्ञान के बल पर वह स्वयं को सर्व-शक्तिमान समझने लगा और अपने ही (4) _____ की खाई खोदने लगा। बढ़ता हुआ प्रदूषण और प्राकृतिक असंतुलन इसी के परिणाम हैं। प्रकृति को नुकसान पहुँचाकर उसने समस्त मानव जाति को नुकसान पहुँचाया है। प्रकृति के साथ (5) _____ स्थापित करके ही मनुष्यता को बचाया जा सकता है।

SubQuestion No : 24

Q.24 गद्यांश के रिक्त स्थान (4) के लिए सर्वाधिक उपयुक्त शब्द होगा-

- Ans
- 1. मृत्यु
 - 2. विकास
 - 3. विनाश
 - 4. प्रगति

Question ID : 65497834814

Status : Not Answered

Chosen Option : --

Comprehension:

दिए गए गद्यांश में से कुछ शब्द हटा दिए गए हैं। संबंधित प्रश्नों में प्रत्येक संख्या के लिए सबसे उपयुक्त विकल्प का चयन करें।

प्रकृति मनुष्य को ईश्वर का अनुपम (1) _____ है। प्रकृति सदा से मनुष्य की सहचरी रही है और अपने गुणों एवं सौंदर्य से मानव को तृप्त करती रही है। मनुष्य भी उसके (2) _____ रूप के प्रति खिंचा चला गया है, परंतु जैसे-जैसे मनुष्य के हाथों में विज्ञान की शक्ति आने लगी, उसने प्रकृति का दोहन किया और अपनी सहचरी प्रकृति को (3) _____ पहुँचाना आरंभ कर दिया। विज्ञान के बल पर वह स्वयं को सर्व-शक्तिमान समझने लगा और अपने ही (4) _____ की खाई खोदने लगा। बढ़ता हुआ प्रदूषण और प्राकृतिक असंतुलन इसी के परिणाम हैं। प्रकृति को नुकसान पहुँचाकर उसने समस्त मानव जाति को नुकसान पहुँचाया है। प्रकृति के साथ (5) _____ स्थापित करके ही मनुष्यता को बचाया जा सकता है।

SubQuestion No : 25

Q.25 गद्यांश के रिक्त स्थान (5) के लिए सर्वाधिक उपयुक्त शब्द होगा-

- Ans
- 1. समरूपता
 - 2. सामंजस्य
 - 3. समानता
 - 4. सहजता

Question ID : 65497834815

Status : Not Answered

Chosen Option : --

KD Job Updates

Constable GD in CAPFs NIA SSF and Rifleman GD in Assam Rifles Examination 2021

Roll Number	
Candidate Name	
Venue Name	iON Digital Zone iDZ 2 Moula Ali
Exam Date	24/11/2021
Exam Time :	9:00 AM - 10:30 AM
Subject	Constable GD 2021

Section : Part A General Intelligence and Reasoning

Q.1 Eight friends, K, L, M, N, O, P, Q and R, are sitting at two circular tables, one smaller inner table and one bigger outer table. Both the circular tables have the same centre. Four persons are sitting at each table at equal distances between them, facing the centre. M is to the immediate right of L. Q and N are sitting in the south and are facing R and L. M is sitting opposite to O at the same table. P is sitting opposite K at the outer table. N is between P and K at the same table. L is between M and O at the same table. Who is sitting in the north at the outer table?

- Ans
- 1. K
 - 2. P
 - 3. R
 - 4. L

Question ID : 65497829863
 Status : Not Answered
 Chosen Option : -

Q.2 Read the given statements and conclusions carefully. Assuming that the information given in the statements is true, even if it appears to be at variance with commonly known facts, decide which of the given conclusions logically follow(s) from the statements.

Statements:
 All rats are dogs.
 Some rats are hens.

Conclusions:
 I. Some rats are dogs.
 II. Some hens are rats.

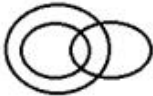


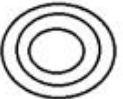
- Ans
- 1. Only conclusion I follows
 - 2. Neither conclusion I nor II follows
 - 3. Only conclusion II follows
 - 4. Both conclusions I and II follow

Question ID : 65497829877
 Status : Answered
 Chosen Option : 4

Q.3 Select the Venn diagram that best represents the relationship between the following classes.

Niece, Beauticians, Women

Ans

- ✓ 1. 
- ✗ 2. 
- ✗ 3. 
- ✗ 4. 

Question ID : 65497829875
 Status : Answered
 Chosen Option : 1

Q.4 Select the option that is related to the third number in the same way as the second number is related to the first number and the sixth number is related to the fifth number.

7 : 113 :: 11 : ? :: 15 : 481

Ans

- ✗ 1. 388
- ✗ 2. 155
- ✗ 3. 340
- ✓ 4. 265

Question ID : 65497829864
 Status : Answered
 Chosen Option : 2

Q.5 The ages of two sisters Rajini and Rani are in the proportion of 2 : 3. After 6 years, the proportion of their ages will be 3 : 4. What is the current age of Rajini?

Ans

- ✗ 1. 14 years
- ✗ 2. 16 years
- ✗ 3. 18 years
- ✓ 4. 12 years

Question ID : 65497829879
 Status : Answered
 Chosen Option : 4

Q.6 Select the number from among the given options that can replace the question mark (?) in the following series.

2, 5, 11, 17, ?, 31, 41

- Ans 1. 23
 2. 25
 3. 21
 4. 29

Question ID : 65497829870
 Status : Answered
 Chosen Option : 1

Q.7 In a certain code language, 'RAT' is coded as '39' and 'DOG' is coded as '26'. How will 'YAK' be coded in that language?

- Ans 1. 31
 2. 37
 3. 25
 4. 43

Question ID : 65497829869
 Status : Answered
 Chosen Option : 2

Q.8 Pointing towards a boy, Ranjita said, "He is my husband's father-in-law's only daughter's son's father's only sister's son". How is that boy's mother related to Ranjita's husband?

- Ans 1. Daughter
 2. Paternal aunt
 3. Mother
 4. Sister

Question ID : 65497829887
 Status : Not Answered
 Chosen Option : -

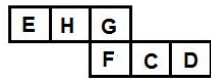
Q.9 Select the option that is related to the third term in the same way as the second term is related to the first term.

TONGUE : PUHOFV :: MASTER : ?

- Ans 1. PCTHVS
 2. TBOSFU
 3. BNUTSF
 4. SFUTBN

Question ID : 65497829885
 Status : Not Answered
 Chosen Option : -

Q.10 A cube is made by folding the given sheet. In the cube so formed, which letter will be on the face opposite to the face showing 'C'?



- Ans
- 1. H
 - 2. E
 - 3. G
 - 4. F

Question ID : 65497829866
Status : Answered
Chosen Option : 1

Q.11 'Viticulture' is related to 'Grapes' in the same way as 'Floriculture' is related to '_____'.
Ans

- 1. Silkworm
- 2. Fluorine
- 3. Flowers
- 4. Plants

Question ID : 65497829873
Status : Answered
Chosen Option : 3

Q.12 Select the letter-cluster from among the given options that can replace the question mark (?) in the following series.

SRQ, PON, ?, JIH, GFE

- Ans
- 1. MLK
 - 2. LKM
 - 3. KLM
 - 4. MKL

Question ID : 65497829872
Status : Answered
Chosen Option : 1

Q.13 In a certain code language, 'FLOAT' is written as 'ROU', 'CLAIM' is written as 'OAV'. How will 'ARMED' be written in that language?
Ans

- 1. RFC
- 2. DMK
- 3. SMI
- 4. TFE

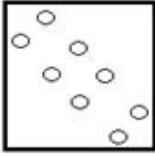
Question ID : 65497829886
Status : Answered
Chosen Option : 3

Q.14 The sequence of folding a piece of paper and the manner in which the folded paper has been cut is shown in the following figures. How would this paper look when unfolded?

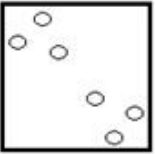


Ans

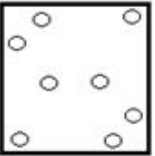
✓ 1.



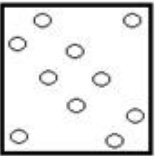
✗ 2.



✗ 3.



✗ 4.



Question ID : 65497829880
 Status : Answered
 Chosen Option : 1

Q.15 Study the given pattern carefully and select the number that can replace the question mark (?) in it.

6 15 48
 7 17 55
 13 29 ?

Ans ✗ 1. 79

✗ 2. 78

✓ 3. 97

✗ 4. 87

Question ID : 65497829878
 Status : Not Answered
 Chosen Option : -

Q.16 What will be the value of the given expression if 'A' means '+', 'B' means '-', 'C' means 'x', and 'D' means '÷'?

$$36 A (15 C 4) B (21 A 13) A 24 D (16 D 2) = ?$$

- Ans
- 1. 96
 - 2. 83
 - 3. 65
 - 4. 51

Question ID : 65497829865
 Status : Answered
 Chosen Option : 3

Q.17 Select the combination of letters that when sequentially placed in the blanks of the given series, will complete the series.

O _ K M _ O P K _ A O _ _ M A

- Ans
- 1. P A M P O
 - 2. P M A P K
 - 3. M A K A P
 - 4. P A M P K

Question ID : 65497829882
 Status : Answered
 Chosen Option : 4

Q.18 Select the option that is NOT embedded in the given figure (rotation is NOT allowed).



- Ans
- 1.
 - 2.
 - 3.
 - 4.

Question ID : 65497829867
 Status : Answered
 Chosen Option : 2

Q.19 Select the number from among the given options that can replace the question mark (?) in the following series.

6, 22, 70, 214, ?, 1942

- Ans 1. 646
 2. 638
 3. 280
 4. 430

Question ID : 65497829883
 Status : Answered
 Chosen Option : 1

Q.20 In a certain code language, 'LAYOUT' is written as 'WRRVDI'. How will 'CHETAK' be written in that language?

- Ans 1. HQXEBF
 2. NWXKBZ
 3. HXQBEF
 4. NXWBKZ

Question ID : 65497829876
 Status : Answered
 Chosen Option : 4

Q.21 Select the correct option that indicates the arrangement of the given words in the order in which they appear in an English dictionary.

1. Acoustic
2. Academy
3. Accent
4. Accord
5. Active

- Ans 1. 2, 3, 4, 1, 5
 2. 2, 4, 3, 1, 5
 3. 2, 3, 4, 5, 1
 4. 2, 3, 1, 4, 5

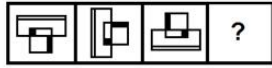
Question ID : 65497829881
 Status : Answered
 Chosen Option : 1

Q.22 P, Q, R, S, T, U and V are sitting in a row on a wall facing towards the west. R is just to the left of S. Q is at one of the end points and T is his neighbour. V is sitting between T and U. S is fifth from the north end. Who among the following persons is sitting exactly in the middle of the row?

- Ans 1. U
 2. V
 3. T
 4. Q

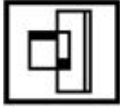
Question ID : 65497829874
 Status : Not Answered
 Chosen Option : -

Q.23 Select the figure from among the given options that can replace the question mark (?) in the following series.

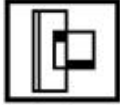


Ans

✗ 1.



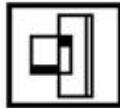
✗ 2.



✗ 3.



✓ 4.



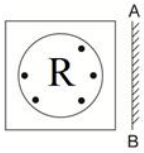
Question ID : 65497829884

Status : Answered

Chosen Option : 4

KD Job Updates

Q.24 Select the correct mirror image of the given figure when the mirror is placed at 'AB' as shown.




Ans

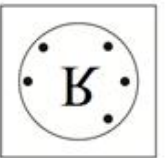
✓ 1.



✗ 2.



✗ 3.



✗ 4.



Question ID : 65497829871
 Status : Answered
 Chosen Option : 1

Q.25 Four letter-clusters have been given, out of which three are alike in some manner and one is different. Select the letter-cluster that is different.

- Ans
- ✗ 1. FHLR
 - ✗ 2. DFJP
 - ✗ 3. NPTZ
 - ✓ 4. GIMU

Question ID : 65497829868
 Status : Answered
 Chosen Option : 4

Q.1 Which of the following statements about Emperor Ashoka is FALSE?

- Ans 1. Ashoka was opposed by a wise man named Chanakya (also known as Kautilya).
 2. Ashoka belonged to the Mauryan dynasty.
 3. The empire that Ashoka ruled was founded by his grandfather.
 4. Ashoka is the only king in the history of the world who gave up conquest after winning a war.

Question ID : 65497829910
Status : Answered
Chosen Option : 3

Q.2 In September 2021, _____ became the first Indian woman to win two Paralympic medals.

- Ans 1. Bhavina Patel
 2. Avani Lekhara
 3. Ekta Bhyan
 4. Deepa Malik

Question ID : 65497829905
Status : Answered
Chosen Option : 1

Q.3 Which of the following countries hosted the Asia Pacific Economic Cooperation in November 2020?

- Ans 1. Malaysia
 2. Hong Kong
 3. Japan
 4. Singapore

Question ID : 65497829901
Status : Answered
Chosen Option : 4

Q.4 Under the _____ system of land revenue, the ownership rights were handed over to the peasants and the British Government collected taxes directly from them.

- Ans 1. Ryotwari
 2. Mahalwari
 3. Malguzari
 4. Taluqdar

Question ID : 65497829907
Status : Answered
Chosen Option : 1

Q.5 A _____ is a passive two-terminal electrical component that implements electrical resistance as a circuit element.

- Ans
- 1. transistor
 - 2. resistor
 - 3. diode
 - 4. capacitor

Question ID : 65497829890
Status : Answered
Chosen Option : 1

Q.6 Which of the following is another name for Vitamin K1?

- Ans
- 1. Phylloquinone
 - 2. Nicotinic acid
 - 3. Thiamine
 - 4. Riboflavin

Question ID : 65497829889
Status : Answered
Chosen Option : 1

Q.7 Article _____ of the Constitution of India deals with Administration of Union Territories.

- Ans
- 1. 233
 - 2. 239
 - 3. 224
 - 4. 228

Question ID : 65497829911
Status : Not Answered
Chosen Option : -

Q.8 What is the maximum amount of loan permissible under the 'Shishu scheme' of the Pradhan Mantri MUDRA Yojana?

- Ans
- 1. ₹2,00,000
 - 2. ₹5,00,000
 - 3. ₹1,00,000
 - 4. ₹50,000

Question ID : 65497829896
Status : Not Answered
Chosen Option : -

Q.9 Who among the following is the author of the book 'The Day I Stopped Drinking Milk'?

- Ans 1. Twinkle Khanna
 2. Roshni Nilkani
 3. Sudha Murty
 4. Nita Ambani

Question ID : 65497829891
Status : Not Answered
Chosen Option : -

Q.10 Jawai Bandh is a reservoir built across Jawai River, which is a tributary of the:

- Ans 1. Luni river
 2. Banas river
 3. Chambal river
 4. Mahi river

Question ID : 65497829897
Status : Not Answered
Chosen Option : -

Q.11 Padma Shri awardee Sitara Devi was known for her contribution to the field of _____.

- Ans 1. Kathak
 2. Odissi
 3. Mudi yettu
 4. Sattriya

Question ID : 65497829892
Status : Answered
Chosen Option : 1

Q.12 Who won the Women's Singles title at the US Open 2020 tennis tournament?

- Ans 1. Naomi Osaka
 2. Maria Sharapova
 3. Victoria Azarenka
 4. Serena Williams

Question ID : 65497829898
Status : Answered
Chosen Option : 1

Q.13 The highest peak of the Aravalli range is located in _____.

- Ans 1. Gujarat
 2. Delhi
 3. Rajasthan
 4. Haryana

Question ID : 65497829904
Status : Answered
Chosen Option : 1

Q.14 What was India's rank in the Ease of Doing Business Index 2020?

- Ans 1. 54
 2. 63
 3. 71
 4. 67

Question ID : 65497829899
Status : Answered
Chosen Option : 1

Q.15 In September 2021, Coal India Ltd. started a pilot project to replace use of diesel with _____ in dumpers.

- Ans 1. hydrogen
 2. ethanol
 3. liquefied natural gas (LNG)
 4. compressed natural gas (CNG)

Question ID : 65497829908
Status : Answered
Chosen Option : 1

Q.16 Who among the following is the author of the play 'Wedding Album'?

- Ans 1. Badal Sarkar
 2. Mahesh Dattani
 3. Girish Karnad
 4. Vijay Tendulkar

Question ID : 65497829894
Status : Not Answered
Chosen Option : -

Q.17 6 April 1919 was observed as a day of non-violent opposition to _____.

- Ans 1. the Simon Commission
 2. the Rowlatt Act
 3. the Cabinet Mission Plan
 4. the Morely-Minto Reforms

Question ID : 65497829909
Status : Answered
Chosen Option : 2

Q.18 Which of the following pieces is NOT allowed to move backward on a chess board?

- Ans 1. Bishop
 2. Pawn
 3. King
 4. Queen

Question ID : 65497829895
Status : Answered
Chosen Option : 1

Q.19 The Zika virus disease is caused by a virus transmitted primarily by the _____ species of mosquitoes.

- Ans
- 1. Culex
 - 2. Anopheles
 - 3. Aedes
 - 4. Haemagogus

Question ID : 65497829906
Status : Not Answered
Chosen Option : -

Q.20 Which of the following is a ferrous mineral?

- Ans
- 1. Manganese
 - 2. Copper
 - 3. Bauxite
 - 4. Zinc

Question ID : 65497829893
Status : Answered
Chosen Option : 3

Q.21 In which of the following years was the 'Pradhan Mantri Ujjwala Yojana' launched?

- Ans
- 1. 2014
 - 2. 2018
 - 3. 2020
 - 4. 2016

Question ID : 65497829902
Status : Answered
Chosen Option : 2

Q.22 In which Schedule of the Constitution of India is the language 'Hindi' included?

- Ans
- 1. Tenth
 - 2. Fourth
 - 3. Fifth
 - 4. Eighth

Question ID : 65497829900
Status : Answered
Chosen Option : 4

Q.23 In June 2021, the Ministry of Heavy Industries increased the subsidy for electric two-wheelers to _____ per kWh under the FAME India Scheme Phase II.

- Ans
- 1. ₹10,000
 - 2. ₹20,000
 - 3. ₹25,000
 - 4. ₹15,000

Question ID : 65497829912
Status : Not Answered
Chosen Option : -

Q.24 In which of the following cities is the Dev-Deepawali' festival celebrated?

- Ans
- 1. Ujjain
 - 2. Ayodhya
 - 3. Varanasi
 - 4. Prayagraj

Question ID : 65497829888
Status : Not Answered
Chosen Option : -

Q.25 In which year was the Oudh Kisan Sabha set up?

- Ans
- 1. 1930
 - 2. 1925
 - 3. 1920
 - 4. 1928

Question ID : 65497829903
Status : Not Answered
Chosen Option : -

Section : Part C Elementary Mathematics

Q.1 In a transaction, the profit percentage is 70% of the cost. If the cost further increases by 40%, but the selling price remains the same, what is the difference between the two profit percentages?

- Ans
- 1. 48.57%
 - 2. 40.57%
 - 3. 45.87%
 - 4. 40.0%

Question ID : 65497829918
Status : Answered
Chosen Option : 4

Q.2 An automobile financier claims to be lending money at simple interest, but he includes the interest every six months for calculating the principal. If he is charging an interest of 14%, the effective rate of interest becomes:

- Ans**
- 1. 15%
 - 2. 14.49%
 - 3. 14.35%
 - 4. 15.49%

Question ID : 65497829919
 Status : Answered
 Chosen Option : 2

Q.3 A calculates his profit percentage on the selling price of an article, whereas B calculates his profit on the cost price of the same article. The selling price of both of them is the same and both get 40% profit. If the difference between their profits is ₹120, then the selling price (in ₹) of the article is:

- Ans**
- 1. 1,120
 - 2. 1,020
 - 3. 1,050
 - 4. 980

Question ID : 65497829932
 Status : Not Answered
 Chosen Option : -

Q.4 The average of 19 numbers is 24. The average of the first 8 numbers is 26.5 and that of the last 12 numbers is 21.5. If the 8th number is excluded, then what will be the average (correct to one decimal point) of the remaining numbers?

- Ans**
- 1. 24.6
 - 2. 25.2
 - 3. 22.8
 - 4. 23.4

Question ID : 65497829925
 Status : Answered
 Chosen Option : 3

Q.5 A, B and C are three numbers. A is 48% less than B and C is 20% more than the sum of A and B. By what percentage (correct to one decimal place) is B less than C?

- Ans**
- 1. 48.4%
 - 2. 45.2%
 - 3. 72.8%
 - 4. 82.4%

Question ID : 65497829927
 Status : Not Answered
 Chosen Option : -

Q.6 Find the value of x in the expression $20\% \text{ of } 80 + 2x = 45\% \text{ of } 30 + 20\% \text{ of } 85$.

- Ans
- ✓ 1. $7\frac{1}{4}$
 - ✗ 2. $7\frac{3}{4}$
 - ✗ 3. $7\frac{1}{2}$
 - ✗ 4. $7\frac{1}{3}$

Question ID : 65497829931
 Status : Answered
 Chosen Option : 1

Q.7 Two numbers are in the ratio 5 : 9. If their HCF is 14, then what is their LCM?

- Ans
- ✗ 1. 8820
 - ✗ 2. 196
 - ✗ 3. 56
 - ✓ 4. 630

Question ID : 65497829913
 Status : Answered
 Chosen Option : 4

Q.8 The four walls of a room with dimensions $12 \text{ m} \times 15 \text{ m} \times 20 \text{ m}$ are to be white washed at the rate of ₹2/m². Find the cost.

- Ans
- ✗ 1. ₹2,980
 - ✗ 2. ₹1,340
 - ✗ 3. ₹1,150
 - ✓ 4. ₹2,160

Question ID : 65497829921
 Status : Answered
 Chosen Option : 4

Q.9 A person lent a certain sum of money at 5% simple interest. If the interest after 6 years is ₹5,600 less than the sum lent, then what is the sum lent?

- Ans
- 1. ₹4,307 $\frac{9}{13}$
 - 2. ₹18,666 $\frac{2}{3}$
 - 3. ₹9,200
 - 4. ₹8,000

Question ID : 65497829916
Status : Answered
Chosen Option : 2

Q.10 The value of $\left(1\frac{1}{9} \times 1\frac{1}{20} \div \frac{21}{38} - \frac{1}{3}\right) \times \frac{3}{8} - \left(\frac{2}{3} \div \frac{3}{4} \text{ of } \frac{5}{9}\right) \div 3\frac{1}{5} + 1\frac{1}{6}$ is:

- Ans
- 1. $1\frac{1}{2}$
 - 2. $1\frac{1}{3}$
 - 3. $1\frac{1}{6}$
 - 4. $1\frac{1}{4}$

Question ID : 65497829933
Status : Answered
Chosen Option : 2

Q.11 Sunderlal distributed his savings of ₹1,62,000 among his wife, 3 sons and a daughter in such a way that his wife gets double of what his daughter gets and his daughter gets double of what each of his sons get. How much will his daughter get?

- Ans
- 1. ₹18,000
 - 2. ₹36,000
 - 3. ₹72,000
 - 4. ₹27,000

Question ID : 65497829915
Status : Answered
Chosen Option : 4

Q.12 A shopkeeper gives 17% discount on the discounted price after giving an initial discount of 12% on the marked price of a refrigerator. If the final sale price is ₹21,912, the marked price (in ₹) is:

- Ans
- 1. 28,250
 - 2. 31,500
 - 3. 30,000
 - 4. 27,000

Question ID : 65497829917
Status : Not Answered
Chosen Option : -

Q.13 The ratio of train and bus fares from A to B is 3 : 5. If the train fare is increased by 15% and bus fare is increased by 10%, then what will be the ratio of the new fares of train and bus?

- Ans
- 1. 69 : 110
 - 2. 70 : 99
 - 3. 67 : 97
 - 4. 77 : 105

Question ID : 65497829922
Status : Answered
Chosen Option : 1

Q.14 The ages of Ramesh and his wife are 40 years and 36 years, respectively. If the average age of their son and 2 daughters is 13 years, then what is the average age of the family?

- Ans
- 1. $20\frac{2}{5}$ years
 - 2. $25\frac{1}{2}$ years
 - 3. 23 years
 - 4. $29\frac{2}{3}$ years

Question ID : 65497829914
Status : Answered
Chosen Option : 3

Q.15 A manufacturer marked an item for ₹1,400 and allowed 25% discount to a retailer, who sold it by earning 12% profit. At what price (in ₹) did the retailer sell the item?

- Ans
- 1. 1,176
 - 2. 1,268
 - 3. 1,200
 - 4. 1,250

Question ID : 65497829936
Status : Answered
Chosen Option : 2

Q.16 The list price of an article is ₹850. It is sold for ₹528.87, after giving three successive discounts of 20%, 15% and $x\%$ on the list price. What is the value of x ?

- Ans**
- 1. 8
 - 2. 9
 - 3. 8.5
 - 4. 9.5

Question ID : 65497829926
Status : Not Answered
Chosen Option : -

Q.17 A boat goes 10 km upstream and 12 km downstream in 4 hours. It can also go $7\frac{1}{2}$ km upstream and 7 km downstream in $2\frac{3}{4}$ hours. What is the speed (in km/h) of the boat when going upstream?

- Ans**
- 1. 7
 - 2. 6
 - 3. 8
 - 4. 4

Question ID : 65497829929
Status : Not Answered
Chosen Option : -

Q.18 The cost of 2 dozen bananas is ₹240 and the cost of 18 lemons is ₹90. Find the ratio of the cost of 1 lemon to that of one banana.

- Ans**
- 1. 1 : 2
 - 2. 2 : 3
 - 3. 3 : 2
 - 4. 2 : 1

Question ID : 65497829920
Status : Answered
Chosen Option : 1

Q.19 If the diameter of a sphere is 56 cm, then what is its surface area? (Take $\pi = \frac{22}{7}$)

- Ans**
- 1. 9856 cm^2
 - 2. 9556 cm^2
 - 3. 9756 cm^2
 - 4. 9806 cm^2

Question ID : 65497829924
Status : Answered
Chosen Option : 1

Q.20 Simplify the following expression.

$$2 \div [(-6) \div 2 \times 3] \times 3 - 1$$

- Ans
- 1. $-1\frac{2}{3}$
 - 2. $-\frac{4}{9}$
 - 3. -4
 - 4. -7

Question ID : 65497829935
 Status : Answered
 Chosen Option : 1

Q.21 A worker can complete a job in 25 days. If supervisor are 25% more efficient than worker, then how many days will 1 supervisor and 5 workers, working together, take to complete the job?

- Ans
- 1. $3\frac{1}{2}$
 - 2. $4\frac{1}{4}$
 - 3. 4
 - 4. 5

Question ID : 65497829937
 Status : Answered
 Chosen Option : 3

Q.22 Find the greatest possible length which can be used to measure exactly the lengths 4 m 90 cm, 3 m 85 cm and 12 m 95 cm.

- Ans
- 1. 35 cm
 - 2. 25 cm
 - 3. 20 cm
 - 4. 45 cm

Question ID : 65497829930
 Status : Answered
 Chosen Option : 1

Q.23 A sum of ₹1,727 is divided into three parts A, B and C so that their amounts after 3, 4 and 5 years, respectively, are equal, the rate of simple interest being 5% per annum. How much is A?

- Ans
- 1. ₹670
 - 2. ₹552
 - 3. ₹575
 - 4. ₹600

Question ID : 65497829923
 Status : Answered
 Chosen Option : 3

Q.24 The ratio of efficiencies of X and Y for doing a certain work is 5 : 9. Working together, they can complete a work in 15 days. X alone will complete $66\frac{2}{3}\%$ of the same work in:

- Ans**
- 1. 28 days
 - 2. 24 days
 - 3. 35 days
 - 4. 30 days

Question ID : 65497829928
 Status : Answered
 Chosen Option : 1

Q.25 Train A passes an electric pole in 15 seconds, moving at 60 km/h. It crosses train B moving in the opposite direction at 48 km/h, in 19 seconds. What is the length (in m) of train B?

- Ans**
- 1. 350
 - 2. 280
 - 3. 300
 - 4. 320

Question ID : 65497829934
 Status : Answered
 Chosen Option : 4

Section : Part D English

Q.1 Select the most appropriate meaning of the given idiom.

Elephant in the room

- Ans**
- 1. An obvious issue left unaddressed due to its sensitivity
 - 2. An extremely fat person sitting all alone in a room
 - 3. A wild untamed animal left to wander astray
 - 4. A pretty affair which is kept a secret

Question ID : 65497829942
 Status : Answered
 Chosen Option : 4

Q.2 Select the most appropriate meaning of the given idiom.

Hands down

- Ans**
- 1. Without any weapons
 - 2. Easily and without doubt
 - 3. With sufficient strength
 - 4. Very weakly and slowly

Question ID : 65497829947
 Status : Answered
 Chosen Option : 4

Q.3 Select the option that can be used as a one-word substitute for the given group of words.

Natural skill at doing something

- Ans
- 1. Sense
 - 2. Awareness
 - 3. Knack
 - 4. Passion

Question ID : 65497829952
Status : Answered
Chosen Option : 1

Q.4 Select the option that will improve the underlined part of the given sentence. In case no improvement is needed, select 'No improvement required'.

Try harder, don't give away so easily.

- Ans
- 1. give back
 - 2. give up
 - 3. give out
 - 4. No improvement required

Question ID : 65497829948
Status : Answered
Chosen Option : 2

Q.5 Select the option that can be used as a one-word substitute for the given group of words.

A person who investigates and solves crimes

- Ans
- 1. Invigilator
 - 2. Detective
 - 3. Explorer
 - 4. Inventor

Question ID : 65497829957
Status : Answered
Chosen Option : 2

Q.6 Select the option that will improve the underlined part of the given sentence. In case no improvement is needed, select 'No improvement required'.

It never dawned to him if he could be in danger.

- Ans
- 1. dawned up to him that
 - 2. dawned on him that
 - 3. dawned at him whether
 - 4. No improvement required

Question ID : 65497829955
Status : Not Answered
Chosen Option : -

Q.7 Select the most appropriate option to fill in the blank.

The protesters _____ when the police used tear gas.

- Ans
- 1. regretted
 - 2. waved
 - 3. assembled
 - 4. dispersed

Question ID : 65497829940
Status : Answered
Chosen Option : 4

Q.8 Select the most appropriate option to fill in the blank.

Asha has _____ the house beautifully for the party.

- Ans
- 1. improved
 - 2. decorated
 - 3. planned
 - 4. produced

Question ID : 65497829949
Status : Answered
Chosen Option : 2

Q.9 The following sentence has been split into four segments. Identify the segment that contains a grammatical error.

We have / run out eggs; / could you buy / some more?

- Ans
- 1. could you buy
 - 2. run out eggs
 - 3. some more
 - 4. We have

Question ID : 65497829950
Status : Answered
Chosen Option : 1

Q.10 The following sentence has been split into four segments. Identify the segment that contains a grammatical error.

Their dog is / more better / trained than / our dog.

- Ans
- 1. Their dog is
 - 2. more better
 - 3. our dog
 - 4. trained than

Question ID : 65497829944
Status : Answered
Chosen Option : 2

Q.11 Select the most appropriate ANTONYM of the given word.

Persuade

- Ans 1. Halt
 2. Lead
 3. Coax
 4. Sway

Question ID : 65497829951
Status : Answered
Chosen Option : 1

Q.12 Select the most appropriate SYNONYM of the given word.

Stray

- Ans 1. Casual
 2. Careless
 3. Fickle
 4. Homeless

Question ID : 65497829956
Status : Answered
Chosen Option : 4

Q.13 Select the most appropriate synonym of the given word.

Reliable

- Ans 1. Wealthy
 2. Fortunate
 3. Intelligent
 4. Trusted

Question ID : 65497829945
Status : Answered
Chosen Option : 4

Q.14 Select the most appropriate ANTONYM of the given word.

Monotonous

- Ans 1. Elaborate
 2. Cheerful
 3. Changing
 4. Varied

Question ID : 65497829946
Status : Answered
Chosen Option : 2

Q.15 The following sentence has been split into four segments. Identify the segment that contains a grammatical error.

Ravi told / his friends / that he would / return back soon.

- Ans
- 1. his friends
 - 2. return back soon
 - 3. that he would
 - 4. Ravi told

Question ID : 65497829954
Status : Answered
Chosen Option : 4

Q.16 Select the most appropriate word for the given group of words.

An imaginary place where everything is perfect

- Ans
- 1. elysium
 - 2. utopia
 - 3. eden
 - 4. arcadia

Question ID : 65497829943
Status : Answered
Chosen Option : 3

Q.17 Select the INCORRECTLY spelt word.

- Ans
- 1. Custard
 - 2. Costudy
 - 3. Cushion
 - 4. Curtail

Question ID : 65497829939
Status : Answered
Chosen Option : 2

Q.18 Select the most appropriate option that can substitute the underlined segment in the given sentence. If there is no need to substitute it, select 'No substitution required'.

If he works harder, he got better results.

- Ans
- 1. was getting
 - 2. is getting
 - 3. No substitution required
 - 4. will get

Question ID : 65497829938
Status : Answered
Chosen Option : 4

Q.19 Select the INCORRECTLY spelt word.

- Ans
- 1. Fasten
 - 2. Plunge
 - 3. Buisness
 - 4. Evolve

Question ID : 65497829953
Status : Answered
Chosen Option : 3

Q.20 Select the most appropriate option to fill in the blank.

The government _____ the contract for 100 low-floor buses to an automobile manufacturer.

- Ans
- 1. rewarded
 - 2. granted
 - 3. gifted
 - 4. awarded

Question ID : 65497829941
Status : Answered
Chosen Option : 2

Comprehension:

In the following passage, some words have been deleted. Read the passage carefully and select the most appropriate option to fill in each blank.

On 14th April 1912, the Titanic received warnings all the day about (1)_____ icebergs. The first message was received at 9 a.m. Similar messages (2)_____. Around 9 p.m., Captain Smith (3)_____ with his second officer, before retiring for the night. They knew that on such a clear, moonless night it would be (4)_____ difficult to spot icebergs. Why did they not change the course of the ship and take the ice-free southern route? It remains one of the (5)_____ mysteries surrounding the Titanic.

SubQuestion No : 21

Q.21 Select the most appropriate option to fill in blank no. 1.

- Ans
- 1. floating
 - 2. stacking
 - 3. sinking
 - 4. soaring

Question ID : 65497829959
Status : Answered
Chosen Option : 1

Comprehension:

In the following passage, some words have been deleted. Read the passage carefully and select the most appropriate option to fill in each blank.

On 14th April 1912, the Titanic received warnings all the day about (1)_____ icebergs. The first message was received at 9 a.m. Similar messages (2)_____. Around 9 p.m., Captain Smith (3)_____ with his second officer, before retiring for the night. They knew that on such a clear, moonless night it would be (4)_____ difficult to spot icebergs. Why did they not change the course of the ship and take the ice-free southern route? It remains one of the (5)_____ mysteries surrounding the Titanic.

SubQuestion No : 22

Q.22 Select the most appropriate option to fill in blank no. 2.

- Ans
- 1. rejected
 - 2. adapted
 - 3. followed
 - 4. influenced

Question ID : 65497829960

Status : Not Answered

Chosen Option : -

Comprehension:

In the following passage, some words have been deleted. Read the passage carefully and select the most appropriate option to fill in each blank.

On 14th April 1912, the Titanic received warnings all the day about (1)_____ icebergs. The first message was received at 9 a.m. Similar messages (2)_____. Around 9 p.m., Captain Smith (3)_____ with his second officer, before retiring for the night. They knew that on such a clear, moonless night it would be (4)_____ difficult to spot icebergs. Why did they not change the course of the ship and take the ice-free southern route? It remains one of the (5)_____ mysteries surrounding the Titanic.

SubQuestion No : 23

Q.23 Select the most appropriate option to fill in blank no. 3.

- Ans
- 1. emigrated
 - 2. conferred
 - 3. gimmicked
 - 4. disunited

Question ID : 65497829961

Status : Answered

Chosen Option : 2

Comprehension:

In the following passage, some words have been deleted. Read the passage carefully and select the most appropriate option to fill in each blank.

On 14th April 1912, the Titanic received warnings all the day about (1)_____ icebergs. The first message was received at 9 a.m. Similar messages (2)_____. Around 9 p.m., Captain Smith (3)_____ with his second officer, before retiring for the night. They knew that on such a clear, moonless night it would be (4)_____ difficult to spot icebergs. Why did they not change the course of the ship and take the ice-free southern route? It remains one of the (5)_____ mysteries surrounding the Titanic.

SubQuestion No : 24

Q.24 Select the most appropriate option to fill in blank no. 4.

- Ans 1. obviously
 2. extremely
 3. dangerously
 4. automatically

Question ID : 65497829962

Status : Answered

Chosen Option : 2

Comprehension:

In the following passage, some words have been deleted. Read the passage carefully and select the most appropriate option to fill in each blank.

On 14th April 1912, the Titanic received warnings all the day about (1)_____ icebergs. The first message was received at 9 a.m. Similar messages (2)_____. Around 9 p.m., Captain Smith (3)_____ with his second officer, before retiring for the night. They knew that on such a clear, moonless night it would be (4)_____ difficult to spot icebergs. Why did they not change the course of the ship and take the ice-free southern route? It remains one of the (5)_____ mysteries surrounding the Titanic.

SubQuestion No : 25

Q.25 Select the most appropriate option to fill in blank no. 5.

- Ans 1. dishelmed
 2. declaimed
 3. resolved
 4. unsolved

Question ID : 65497829963

Status : Answered

Chosen Option : 4

Section : Part D Hindi

Q.1 सही वर्तनी वाले शब्द का चयन कीजिए।

- Ans 1. परस्परीक
 2. पारस्परीक
 3. पारस्परिक
 4. परस्परिक

Question ID : 65497829965

Status : Not Answered

Chosen Option : -

Q.2 'संकीर्ण' का विलोम शब्द होगा-

- Ans 1. विस्तीर्ण
 2. उत्तीर्ण
 3. प्रकीर्ण
 4. संकुचित

Question ID : 65497829979
 Status : Not Answered
 Chosen Option : -

Q.3 'मनोरथ' किसका पर्यायवाची है?

- Ans 1. लालच
 2. लक्ष्य
 3. वासना
 4. कामना

Question ID : 65497829978
 Status : Not Answered
 Chosen Option : -

Q.4 दिये गये वाक्य के किस भाग में त्रुटि है?

इस प्रकरण में उसके साथ उचित न्याय किया जाएगा।

- Ans 1. उचित न्याय
 2. उसके साथ
 3. इस प्रकरण में
 4. किया जाएगा।

Question ID : 65497829981
 Status : Not Answered
 Chosen Option : -

Q.5 'इतिहास का जानकार' वाक्यांश के लिए एक शब्द होगा-

- Ans 1. इतिहासज्ञ
 2. ऐतिहासिक
 3. पुरातात्विक
 4. प्रागैतिहासिक

Question ID : 65497829976
 Status : Not Answered
 Chosen Option : -

Q.6 'हवा से बार्ते करना' मुहावरे का अर्थ बताइए।

- Ans
- 1. पक्षियों की भाषा समझना
 - 2. अकेले रहना
 - 3. ऊँचा उड़ना
 - 4. तेज़ गति से चलना

Question ID : 65497829967
Status : Not Answered
Chosen Option : -

Q.7 दिए गए शब्द के समानार्थी शब्द का चयन करें।

सोना

- Ans
- 1. रत्नाकर
 - 2. हिरण्य
 - 3. कलत्र
 - 4. ललाम

Question ID : 65497829971
Status : Not Answered
Chosen Option : -

Q.8 दिये गये वाक्य में रेखांकित अंश को प्रतिस्थापित करने के लिए सबसे उपयुक्त विकल्प का चयन करें।

मैं दो घंटे से आपकी प्रतीक्षा देख रहा हूँ।

- Ans
- 1. कर रहा हूँ।
 - 2. खा रहा हूँ।
 - 3. सुन रहा हूँ।
 - 4. गुन रहा हूँ।

Question ID : 65497829974
Status : Not Answered
Chosen Option : -

Q.9 दिये गये वाक्य के किस भाग में त्रुटि है?

अगामी सोमवार से परीक्षा शुरू होगी।

- Ans
- 1. सोमवार से
 - 2. शुरू होगी।
 - 3. अगामी
 - 4. परीक्षा

Question ID : 65497829977
Status : Not Answered
Chosen Option : -

Q.10 खूब लड़ी मदर्नी वो तो _____ थी।

रिक्त स्थान की पूर्ति कीजिए।

- Ans
- 1. रानी पद्मावती
 - 2. अनसूया
 - 3. अहल्या
 - 4. झाँसी वाली रानी

Question ID : 65497829975
Status : Not Answered
Chosen Option : -

Q.11 सही वर्तनी वाले शब्द का चयन कीजिए।

- Ans
- 1. शष्ठ
 - 2. षष्ठ
 - 3. षष्ट
 - 4. शष्ट

Question ID : 65497829964
Status : Not Answered
Chosen Option : -

Q.12 'पौ बारह होना' मुहावरे का सही अर्थ क्या है?

- Ans
- 1. खूब लाभ होना
 - 2. बहुत नुकसान होना
 - 3. घमंड करना
 - 4. आश्चर्यचकित होना

Question ID : 65497829980
Status : Not Answered
Chosen Option : -

Q.13 दिए गए वाक्य में रेखांकित खंड को प्रतिस्थापित करने के लिए सबसे उपयुक्त विकल्प का चयन करें। यदि इसे प्रतिस्थापित करने की आवश्यकता नहीं है, तो विकल्प 'किसी बदलाव की आवश्यकता नहीं है' का चयन करें।

मैं निश्चय रूप से नहीं कह सकता कि वह कब आएगा।

- Ans
- 1. किसी बदलाव की आवश्यकता नहीं है।
 - 2. निश्चय स्वरूप से नहीं कह सकता
 - 3. निश्चित रूप से नहीं कह सकता
 - 4. निश्चित रूप में नहीं कह सकता

Question ID : 65497829972
Status : Not Answered
Chosen Option : -

Q.14 दिये गये वाक्यांश के लिए एक शब्द दीजिये।

मृग जैसी आँखों वाली स्त्री

- Ans 1. मृगनयनी
 2. हिरनचक्षु
 3. मृगया
 4. मृगमुखी

Question ID : 65497829969
 Status : Not Answered
 Chosen Option : -

Q.15 रिक्त स्थान को भरने के लिए सबसे उपयुक्त शब्द का चयन करें।

मनोरंजन भी जीवन के लिए उतना ही _____ है, जितना अध्ययन।

- Ans 1. प्रतिबंधित
 2. शानदार
 3. आवश्यक
 4. अनावश्यक

Question ID : 65497829968
 Status : Not Answered
 Chosen Option : -

Q.16 दिए गए वाक्य में रेखांकित खंड को प्रतिस्थापित करने के लिए सबसे उपयुक्त विकल्प का चयन करें। यदि इसे प्रतिस्थापित करने की आवश्यकता नहीं है, तो विकल्प 'किसी बदलाव की आवश्यकता नहीं है' का चयन करें।

अपने परिवार की गरिमा का ध्यान रखना।

- Ans 1. गरिमा का ध्यान रखना।
 2. गरीमा का ध्यान रखना।
 3. गरीमा का ध्यान रखना।
 4. किसी बदलाव की आवश्यकता नहीं है।

Question ID : 65497829966
 Status : Not Answered
 Chosen Option : -

Q.17 'रिक्त' का विलोम शब्द होगा-

- Ans 1. अधूरा
 2. अतिरिक्त
 3. पूर्ण
 4. अपूर्ण

Question ID : 65497829982
 Status : Not Answered
 Chosen Option : -

Q.18 दिए गए वाक्य का वह भाग ज्ञात करें जिसमें कोई त्रुटि है। यदि कोई त्रुटि नहीं है, तो 'कोई त्रुटि नहीं है' चुनें।

वैसा ही (1)/ उच्चारण हमें हिन्दी (2)/ में भी करनी चाहिए (3)/ कोई त्रुटि नहीं है (4)

- Ans
- 1. 1
 - 2. 3
 - 3. 2
 - 4. 4

Question ID : 65497829970
Status : Not Answered
Chosen Option : -

Q.19 नीचे दिए वाक्य में रिक्त-स्थान भरने के लिए सबसे उपयुक्त शब्द का चयन करें।

मृगा सुबह-सुबह _____ देता है।

- Ans
- 1. कूकड़ूँ
 - 2. दहाड़
 - 3. बाँग
 - 4. टर्

Question ID : 65497829973
Status : Not Answered
Chosen Option : -

Q.20 'जो केंद्र की ओर उन्मुख होता हो' वाक्यांश के लिए एक शब्द होगा-

- Ans
- 1. केन्द्रापसारी
 - 2. विकेन्द्रीय
 - 3. केन्द्रीय
 - 4. केन्द्राभिसारी

Question ID : 65497829983
Status : Not Answered
Chosen Option : -

Comprehension:

जैसे ज्ञान का संशोधन और परिष्कार विज्ञान के (1)_____ द्वारा होता है, उसी प्रकार मनुष्य के स्वभाव का (2)_____ कलाओं के द्वारा किया जाता है। केवल ज्ञान की उन्नति और परिष्कार को अपना ध्येय बना लेने के कारण मनुष्य की (3)_____ शक्तियां बढ़ तो बहुत गयी हैं, लेकिन कलाओं की (4)_____ कर देने से हमें उनकी केवल दाहकता ही नसीब हो रही है। कलाहीनता मनुष्य को जड़ बना देती है और सचमुच ही आज का मनुष्य चारों ओर से अपनी ही (5)_____ का शिकार हो रहा है।

उपरोक्त गद्यांश के आधार पर निम्न प्रश्नों के उत्तर दीजिए।

SubQuestion No : 21

Q.21 गद्यांश के रिक्त स्थान (1) के लिए सर्वाधिक उपयुक्त शब्द होगा-

- Ans 1. उपकरणों
 2. प्रयोगों
 3. यंत्रों
 4. उद्योगों

Question ID : 65497829985

Status : Not Answered

Chosen Option : -

Comprehension:

जैसे ज्ञान का संशोधन और परिष्कार विज्ञान के (1)_____ द्वारा होता है, उसी प्रकार मनुष्य के स्वभाव का (2)_____ कलाओं के द्वारा किया जाता है। केवल ज्ञान की उन्नति और परिष्कार को अपना ध्येय बना लेने के कारण मनुष्य की (3)_____ शक्तियां बढ़ तो बहुत गयी हैं, लेकिन कलाओं की (4)_____ कर देने से हमें उनकी केवल दाहकता ही नसीब हो रही है। कलाहीनता मनुष्य को जड़ बना देती है और सचमुच ही आज का मनुष्य चारों ओर से अपनी ही (5)_____ का शिकार हो रहा है।

उपरोक्त गद्यांश के आधार पर निम्न प्रश्नों के उत्तर दीजिए।

SubQuestion No : 22

Q.22 गद्यांश के रिक्त स्थान (2) के लिए सर्वाधिक उपयुक्त शब्द होगा-

- Ans 1. विकास
 2. हास
 3. परिष्कार
 4. उत्थान

Question ID : 65497829986

Status : Not Answered

Chosen Option : -

Comprehension:

जैसे ज्ञान का संशोधन और परिष्कार विज्ञान के (1)_____ द्वारा होता है, उसी प्रकार मनुष्य के स्वभाव का (2)_____ कलाओं के द्वारा किया जाता है। केवल ज्ञान की उन्नति और परिष्कार को अपना ध्येय बना लेने के कारण मनुष्य की (3)_____ शक्तियां बढ़ तो बहुत गयी हैं, लेकिन कलाओं की (4)_____ कर देने से हमें उनकी केवल दाहकता ही नसीब हो रही है। कलाहीनता मनुष्य को जड़ बना देती है और सचमुच ही आज का मनुष्य चारों ओर से अपनी ही (5)_____ का शिकार हो रहा है।

उपरोक्त गद्यांश के आधार पर निम्न प्रश्नों के उत्तर दीजिए।

SubQuestion No : 23

Q.23 गद्यांश के रिक्त स्थान (3) के लिए सर्वाधिक उपयुक्त शब्द होगा-

- Ans 1. मानसिक
 2. सामाजिक
 3. आर्थिक
 4. शारीरिक

Question ID : 65497829987

Status : Not Answered

Chosen Option : -

Comprehension:

जैसे ज्ञान का संशोधन और परिष्कार विज्ञान के (1)_____ द्वारा होता है, उसी प्रकार मनुष्य के स्वभाव का (2)_____ कलाओं के द्वारा किया जाता है। केवल ज्ञान की उन्नति और परिष्कार को अपना ध्येय बना लेने के कारण मनुष्य की (3)_____ शक्तियां बढ़ तो बहुत गयी हैं, लेकिन कलाओं की (4)_____ कर देने से हमें उनकी केवल दाहकता ही नसीब हो रही है। कलाहीनता मनुष्य को जड़ बना देती है और सचमुच ही आज का मनुष्य चारों ओर से अपनी ही (5)_____ का शिकार हो रहा है।

उपरोक्त गद्यांश के आधार पर निम्न प्रश्नों के उत्तर दीजिए।

SubQuestion No : 24

Q.24 गद्यांश के रिक्त स्थान (4) के लिए सर्वाधिक उपयुक्त शब्द होगा-

- Ans 1. अपेक्षा
 2. प्रशंसा
 3. उपेक्षा
 4. तुलना

Question ID : 65497829988

Status : Not Answered

Chosen Option : -

Comprehension:

जैसे ज्ञान का संशोधन और परिष्कार विज्ञान के (1)_____ द्वारा होता है, उसी प्रकार मनुष्य के स्वभाव का (2)_____ कलाओं के द्वारा किया जाता है। केवल ज्ञान की उन्नति और परिष्कार को अपना ध्येय बना लेने के कारण मनुष्य की (3)_____ शक्तियां बढ़ तो बहुत गयी हैं, लेकिन कलाओं की (4)_____ कर देने से हमें उनकी केवल दाहकता ही नसीब हो रही है। कलाहीनता मनुष्य को जड़ बना देती है और सचमुच ही आज का मनुष्य चारों ओर से अपनी ही (5)_____ का शिकार हो रहा है।

उपरोक्त गद्यांश के आधार पर निम्न प्रश्नों के उत्तर दीजिए।

SubQuestion No : 25

Q.25 गद्यांश के रिक्त स्थान (5) के लिए सर्वाधिक उपयुक्त शब्द होगा-

- Ans
- 1. शिथिलता
 - 2. निष्क्रियता
 - 3. सक्रियता
 - 4. जड़ता

Question ID : 65497829989

Status : Not Answered

Chosen Option : -

KD Job Updates

Exam Date	25/11/2021
Exam Time :	4:00 PM - 5:30 PM
Subject	Constable GD 2021

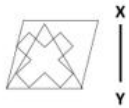
Section : Part A General Intelligence and Reasoning

Q.1 एक निश्चित कूट भाषा में, GRAPES को 66 के रूप में लिखा जाता है। उसी भाषा में PRAISE को किस रूप में लिखा जाएगा?

- Ans
- 1. 69
 - 2. 66
 - 3. 67
 - 4. 68

Question ID : 65497836475
 Status : Answered
 Chosen Option : 4


Q.2 Select the correct mirror image of the given figure when the mirror is placed at XY.



- Ans
- 1.
 - 2.
 - 3.
 - 4.

Question ID : 65497836477
 Status : Answered
 Chosen Option : 3

Q.3 वर्गों के उस समूह का चयन करें जिनके बीच के संबंध को निम्नांकित वेन आरेख द्वारा सबसे अधिक उचित तरीके से दर्शाया गया है।



- Ans
- 1. भारत, एशिया, बांग्लादेश
 - 2. मक्का, चावल, गाजर
 - 3. प्राकृतिक संख्याएँ, पूर्णांक, परिमेय संख्याएँ
 - 4. मानव, पुरुष, राजनेता

Question ID : 65497836486
Status : Answered
Chosen Option : 3

Q.4 Select the letter-cluster from among the given options that can replace the question mark (?) in the following series.

BZE, CWG, ESI, ?, LHM

- Ans
- 1. HNK
 - 2. HMK
 - 3. GNJ
 - 4. IML

Question ID : 65497836483
Status : Answered
Chosen Option : 1

Q.5 अक्षरों के उस संयोजन का चयन करें जिसे दी गई श्रृंखला में रिक्त स्थानों पर क्रमिक रूप से रखने पर श्रृंखला पूर्ण हो जाएगी।

S_P__M_S_MP_

- Ans
- 1. MSPSSS
 - 2. PSMSSS
 - 3. MSSPSS
 - 4. PSMPPS

Question ID : 65497836471
Status : Answered
Chosen Option : 3

Q.6 चार अक्षर-समूह दिए गए हैं, जिनमें से तीन किसी तरह से एक समान हैं और एक भिन्न है। उस अक्षर-समूह का चयन करें जो भिन्न है।

- Ans
- 1. TVX
 - 2. GJL
 - 3. BDF
 - 4. PRT

Question ID : 65497836474
Status : Answered
Chosen Option : 2

Q.7 उस विकल्प का चयन करें जो चौथी संख्या से उसी प्रकार संबंधित है, जिस प्रकार पहली संख्या दूसरी संख्या से संबंधित है।

625 : 25 :: ? : 35

- Ans
- 1. 1025
 - 2. 875
 - 3. 756
 - 4. 927

Question ID : 65497836479
Status : Marked For Review
Chosen Option : 3

Q.8 Select the number from among the given options that can replace the question mark (?) in the following series.

3, 4, 8, 17, 33, ?

- Ans
- 1. 58
 - 2. 56
 - 3. 49
 - 4. 69

Question ID : 65497836476
Status : Answered
Chosen Option : 1

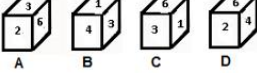
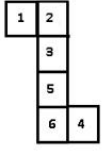
Q.9 उस विकल्प का चयन करें, जिसमें दी गई संख्याओं के बीच वही संबंध है, जो दिए गए समुच्चय की संख्याओं के बीच है।

145, 5, 29

- Ans
- 1. 180, 16, 30
 - 2. 160, 20, 6
 - 3. 224, 14, 16
 - 4. 125, 10, 15

Question ID : 65497836489
Status : Answered
Chosen Option : 3

Q.10 उस बक्से का चयन करें, जिसे निम्नांकित पत्रक (शीट) को रेखाओं पर मोड़ने पर प्राप्त किया जा सकता है।



- Ans
- 1. केवल B
 - 2. A और D
 - 3. A और C
 - 4. केवल D

Question ID : 65497836481

Status : Answered

Chosen Option : 4

Q.11 सात मित्र एक वृत्ताकार मेज पर केंद्र की ओर मुंह किए हुए बैठे हैं। A, B के बाएँ दूसरे स्थान पर बैठा है। C, B और G के बीच बैठा है। D, C के बाएँ दूसरे स्थान पर बैठा है। E जो G के दाएँ दूसरे स्थान पर बैठा है, A और F के बीच बैठा है। G के बाएँ दूसरे स्थान पर कौन बैठा है?

- Ans
- 1. D
 - 2. A
 - 3. E
 - 4. B

Question ID : 65497836478

Status : Answered

Chosen Option : 4

Q.12 एक निश्चित कूट भाषा में, 'NOSE' को 'QPVF' के रूप में लिखा जाता है और 'HAND' को 'KBQE' के रूप में लिखा जाता है। उसी भाषा में 'FACE' को किस रूप में लिखा जाएगा?

- Ans
- 1. JCEE
 - 2. KCFF
 - 3. LBFE
 - 4. IBFF

Question ID : 65497836468

Status : Answered

Chosen Option : 4

Q.13 यदि '+' और '-' तथा संख्या '5' और '7' (अंक नहीं) को आपस में बदल दिया जाए, तो निम्नलिखित व्यंजक का मान कितना होगा?

$$18 - 20 \div 7 \times (15 + 5) + 3$$

- Ans
- 1. 12
 - 2. 28
 - 3. 35
 - 4. 47

Question ID : 65497836480

Status : Answered

Chosen Option : 4

Q.14 एक टेलीविजन को ₹8,820 के मूल्य पर बेचने से 12% लाभ अर्जित हुआ। यदि टेलीविजन को 24% की हानि पर बेचा जाता है, तो उसका विक्रय मूल्य क्या होगा?

- Ans
- 1. ₹6,205
 - 2. ₹5,940
 - 3. ₹5,985
 - 4. ₹6,930

Question ID : 65497836490
Status : Answered
Chosen Option : 3

Q.15 चार मित्र K, L, M और N एक पंक्ति में बैठे हैं, और उनके मुँह दक्षिण दिशा की ओर हैं। L और M दो अंतिम छोरों पर बैठे हैं। K, L और N के बीच बैठा है और M के दाएँ दूसरा है। K के ठीक बाएँ कौन बैठा है?

- Ans
- 1. L
 - 2. M
 - 3. K
 - 4. N

Question ID : 65497836485
Status : Answered
Chosen Option : 4

Q.16 दिए गए कथनों और निष्कर्षों को ध्यानपूर्वक पढ़ें। कथनों में दी गई जानकारी को सत्य मानते हुए विचार करें, भले ही वह सामान्यतः ज्ञात तथ्यों से भिन्न प्रतीत होती हो, और तय करें कि दिए गए निष्कर्षों में से कौन-सा/से कथनों का तार्किक रूप से पालन करता है/करते हैं।

कथन:

सभी गीतकार मॉर्निंग-वाकर हैं।
कोई लेखाकार स्नातक नहीं है।
सभी मॉर्निंग-वाकर लेखाकार हैं।

निष्कर्ष:

- I. कोई गीतकार स्नातक नहीं है।
- II. कुछ गीतकार स्नातक हैं।

- Ans
- 1. केवल निष्कर्ष II पालन करता है।
 - 2. केवल निष्कर्ष I पालन करता है।
 - 3. न तो निष्कर्ष I और न ही II पालन करता है।
 - 4. या तो निष्कर्ष I या II पालन करता है।

Question ID : 65497836488
Status : Answered
Chosen Option : 2

Q.17 Select the option that is related to the third letter-cluster in the same way as the second letter-cluster is related to the first letter-cluster.

GPHD : KTLH :: SDFG : ?

- Ans
- 1. VHKM
 - 2. UHJL
 - 3. XGJL
 - 4. WHJK

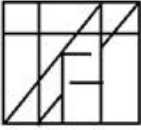
Question ID : 65497836467
Status : Answered
Chosen Option : 4

Q.18 Select the option in which the given figure is embedded (rotation is NOT allowed).

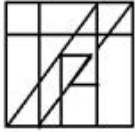


Ans

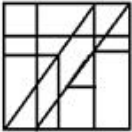
✗ 1.



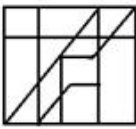
✓ 2.



✗ 3.



✗ 4.

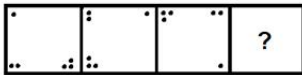


Question ID : 65497836482

Status : Answered


Chosen Option : 2

Q.19 Select the figure from among the given options that can replace the question mark (?) in the following series.




Ans


✗ 1.




✗ 2.



✗ 3.



✓ 4.



Question ID : 65497836473

Status : Answered

Chosen Option : 4

Q.20 एक संयुक्त परिवार में 8 सदस्य P, Q, R, S, T, U, V और W हैं। Q, S का भाई है। V, Q और R का बेटा है। S, U का भाई है। W, S और T की बेटी है। P, V की पत्नी है। R का संबंध P के साथ किस रूप में है?

- Ans
- 1. चाची
 - 2. सास
 - 3. बहन
 - 4. माँ

Question ID : 65497836469
Status : Answered
Chosen Option : 2

Q.21 जिस प्रकार 'ऑस्ट्रेलिया' 'कैनबरा' से संबंधित है, उसी प्रकार 'फ्रांस' ' _____ ' से संबंधित है।

- Ans
- 1. रोम
 - 2. जकार्ता
 - 3. मास्को
 - 4. पेरिस

Question ID : 65497836484
Status : Answered
Chosen Option : 4

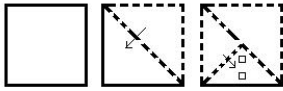
Q.22 वह सही विकल्प चुनें, जो दिए गए शब्दों के उस सही क्रम को दर्शाता है, जिस क्रम में ये शब्द अंग्रेजी शब्दकोश में दिखाई देते हैं।

1. Nebulous
2. Necessary
3. Necrosis
4. Nectarine
5. Negative

- Ans
- 1. 1, 2, 3, 4, 5
 - 2. 1, 3, 2, 4, 5
 - 3. 3, 2, 5, 4, 1
 - 4. 5, 4, 2, 3, 1


Question ID : 65497836470
Status : Answered
Chosen Option : 1

Q.23 The sequence of folding a piece of paper and the manner in which the folded paper has been cut is shown in the following figures. How would this paper look when unfolded?

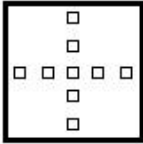


Ans


✗ 1.



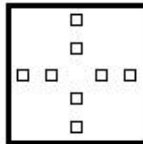
✗ 2.



✗ 3.



✓ 4.



Question ID : 65497836491
Status : Answered
Chosen Option : 2

Q.24 Select the number from among the given options that can replace the question mark (?) in the following series.

100, 96, 88, 76, 60, ?

Ans ✗ 1. 38

✓ 2. 40

✗ 3. 35

✗ 4. 20

Question ID : 65497836472
Status : Answered
Chosen Option : 2

Q.25 एक निश्चित कूट भाषा में, 'DECK' को 'WVXP' लिखा जाता है, और 'CLAIM' को 'XOZRN' लिखा जाता है। उसी कूट भाषा में 'MASCOT' को किस प्रकार लिखा जाएगा?

Ans ✓ 1. NZHXLG

✗ 2. OZHXMG

✗ 3. NZGXKG

✗ 4. NZHYKH

Question ID : 65497836487
Status : Answered
Chosen Option : 1

Q.1 कोलकाता में साल्ट लेक स्टेडियम का नामकरण किसके नाम पर किया गया है?

- Ans
- 1. नेताजी सुभाष चंद्र बोस
 - 2. स्वामी विवेकानंद
 - 3. गोस्टो पॉल
 - 4. ज्योति बसु

Question ID : 65497836492
Status : Answered
Chosen Option : 2

Q.2 युद्ध क्षेत्र में अपने दुश्मनों पर जीत का जश्न मनाने के लिए, नागालैंड की चांग जनजाति कौन-सा नृत्य करती है?

- Ans
- 1. चेराव
 - 2. चांग लो
 - 3. नोंगक्रेम
 - 4. भोरताल

Question ID : 65497836506
Status : Not Attempted and Marked For Review
Chosen Option : --

Q.3 निम्नलिखित में से किन राज्यों में 5वें आयुर्वेद दिवस पर दो आयुर्वेद संस्थान आरंभ किए गए थे?

- Ans
- 1. राजस्थान और गुजरात
 - 2. महाराष्ट्र और कर्नाटक
 - 3. पंजाब और हरियाणा
 - 4. उत्तर प्रदेश और आंध्र प्रदेश

Question ID : 65497836500
Status : Not Answered
Chosen Option : --

Q.4 नवंबर 2020 में कक्षा (ऑर्बिट) में लॉन्च किए गए स्पेसएक्स कू ड्रैगन अंतरिक्ष यान को इसके चालक दल ने _____ नाम दिया था।

- Ans
- 1. पर्सिस्टेंस
 - 2. रेसिलिएंस
 - 3. एन्ड्योरेंस
 - 4. पर्सिवेरेंस

Question ID : 65497836511
Status : Answered
Chosen Option : 4

Q.5 किस राज्य सरकार ने नवंबर 2020 में छोटे व्यापारियों और कारीगरों को ब्याज मुक्त ऋण प्रदान करने के लिए 'जगनन्ना थोड्डू' योजना शुरू की थी?

- Ans
- 1. आंध्र प्रदेश
 - 2. केरल
 - 3. तेलंगाना
 - 4. पश्चिम बंगाल

Question ID : 65497836497
Status : Answered
Chosen Option : 1

Q.6 चिल्का झील जोकि भारत की सबसे बड़ी खारे पानी की झील है, किस राज्य में स्थित है?

- Ans
- 1. आंध्र प्रदेश
 - 2. पश्चिम बंगाल
 - 3. ओडिशा
 - 4. छत्तीसगढ़

Question ID : 65497836503
Status : Answered
Chosen Option : 3

Q.7 1968 में भारत सरकार द्वारा प्रदत्त साहित्य अकादमी अध्येतावृत्ति पाने वाले प्रथम व्यक्ति कौन थे?

- Ans
- 1. सी. नारायण रेड्डी
 - 2. एस. राधाकृष्णन
 - 3. वी.एस. नायपॉल
 - 4. एस.एल. भयरप्पा

Question ID : 65497836509
Status : Not Attempted and Marked For Review
Chosen Option : --

Q.8 अगस्त 2020 में, केंद्र सरकार ने ट्रांसजेंडर व्यक्तियों (अधिकारों का संरक्षण) अधिनियम, 2019 की धारा _____ द्वारा प्रदत्त अधिकारों का प्रयोग करके ट्रांसजेंडर लोगों के लिए राष्ट्रीय परिषद का गठन किया है।

- Ans
- 1. 16
 - 2. 22
 - 3. 25
 - 4. 18

Question ID : 65497836496
Status : Not Answered
Chosen Option : --

Q.9 हसदेव और जोंक नदियाँ भारत के किस राज्य में पाई जाती हैं?

- Ans
- 1. अरुणाचल प्रदेश
 - 2. गोवा
 - 3. छत्तीसगढ़
 - 4. हरियाणा

Question ID : 65497836513
Status : Answered
Chosen Option : 1

Q.10 ज्ञानपीठ पुरस्कार पहली बार किस वर्ष में प्रदान किया गया था?

- Ans
- 1. 1957
 - 2. 1965
 - 3. 1961
 - 4. 1963

Question ID : 65497836504
Status : Not Attempted and Marked For Review
Chosen Option : --

Q.11 अंतिम शुंग शासक की हत्या उसके मंत्री वासुदेव ने की थी, जिसने आगे चलकर _____ वंश की स्थापना की।

- Ans
- 1. कोरवी
 - 2. कण्व
 - 3. काकतीय
 - 4. कलचुरी

Question ID : 65497836516
Status : Answered
Chosen Option : 2

Q.12 'महानवमी डिब्बा' का ऐतिहासिक महत्व निम्नलिखित में से किस राजवंश से जुड़ा है?

- Ans
- 1. चोहान
 - 2. चोल
 - 3. विजयनगर
 - 4. पांड्य

Question ID : 65497836493
Status : Answered
Chosen Option : 4

Q.13 ड्यूटेरियम और ट्रिटियम निम्न हैं:

- Ans
- 1. हाइड्रोजन के समस्थानिक
 - 2. कार्बन के समस्थानिक
 - 3. यूरेनियम के समस्थानिक
 - 4. टाइटेनियम के समस्थानिक

Question ID : 65497836498
Status : Not Attempted and Marked For Review
Chosen Option : --

Q.14 निम्नलिखित में से किसने प्रसिद्ध कोह-ए-नूर हीरा और शाहजहाँ के रत्न जड़ित मयूर सिंहासन को छीन लिया?

- Ans
- 1. मुहम्मद शाह
 - 2. रंजीत सिंह
 - 3. शाह आलम द्वितीय
 - 4. नादिर शाह

Question ID : 65497836494
Status : Answered
Chosen Option : 4

Q.15 निम्नलिखित से किस सूक्ष्मजीव के कारण साइट्रस कैंकर होता है?

- Ans
- 1. विषाणु (वायरस)
 - 2. जीवाणु (बैक्टीरिया)
 - 3. कवक
 - 4. प्रोटोजोआ

Question ID : 65497836508
Status : Not Attempted and Marked For Review
Chosen Option : --

Q.16 प्रधान मंत्री नरेंद्र मोदी ने भारत में नोटबंदी की घोषणा किस वर्ष की थी?

- Ans
- 1. 2018
 - 2. 2016
 - 3. 2014
 - 4. 2012

Question ID : 65497836512
Status : Answered
Chosen Option : 2

Q.17 2011 की जनगणना के अनुसार, निम्नलिखित में से किस राज्य में लिंग अनुपात (प्रति 1000 पुरुषों की तुलना में महिलाएँ) 1000 से अधिक है?

- Ans
- 1. महाराष्ट्र
 - 2. बिहार
 - 3. राजस्थान
 - 4. केरल

Question ID : 65497836501
Status : Answered
Chosen Option : 4

Q.18 भारत के संविधान की प्रस्तावना में निम्नलिखित में से कौन सा शब्द सम्मिलित नहीं है?

- Ans
- 1. संप्रभु (Sovereign)
 - 2. न्याय (Justice)
 - 3. बंधुता (Fraternity)
 - 4. पूँजीवादी (Capitalist)

Question ID : 65497836495
Status : Answered
Chosen Option : 4

Q.19 निम्नलिखित में से कौन सा जहरीला पौधा नहीं है?

- Ans
- 1. नेरियम ओलियंडर
 - 2. कैलोट्रोपिस
 - 3. पार्थेनियम
 - 4. ड्रेसीना

Question ID : 65497836507
Status : Answered
Chosen Option : 2

Q.20 आर्थिक मामलों की कैबिनेट समिति (CCEA) ने रबी मार्केटिंग अवधि 2022-23 के लिए गेहूँ का न्यूनतम समर्थन मूल्य (MSP) _____ प्रति क्विंटल निर्धारित किया है।

- Ans
- 1. ₹2,015
 - 2. ₹1,995
 - 3. ₹2,005
 - 4. ₹1,975

Question ID : 65497836515
Status : Answered
Chosen Option : 1

Q.21 1845-46 ईस्वी की अवधि के दौरान निम्नलिखित में से कौन सी लड़ाई लड़ी गई थी?

- Ans 1. प्रथम आंग्ल-सिख युद्ध
 2. प्रथम आंग्ल-मराठा युद्ध
 3. द्वितीय आंग्ल-मराठा युद्ध
 4. द्वितीय आंग्ल-सिख युद्ध

Question ID : 65497836499
 Status : Answered
 Chosen Option : 2

Q.22 भारतीय दंड संहिता की धारा 304B _____ से संबंधित है।

- Ans 1. आत्महत्या करने का प्रयास
 2. आत्महत्या का दुष्प्रेरण
 3. लापरवाही से हुई मृत्यु
 4. दहेज हत्या

Question ID : 65497836510
 Status : Not Attempted and Marked For Review
 Chosen Option : --

Q.23 निम्नलिखित में से कौन सा स्मारक खिलजी राजवंश द्वारा बनवाया गया था?

- Ans 1. अलाई दरवाजा
 2. बड़ा गुंबद
 3. शीश गुंबद
 4. सफदरजंग का मकबरा

Question ID : 65497836502
 Status : Answered
 Chosen Option : 1

Q.24 कौन से भारतीय कप्तान, सबसे तेज 12000 वनडे रन बनाने वाले क्रिकेटर बने? उन्होंने 2020 में यह उपलब्धि हासिल की।

- Ans 1. भुवनेश्वर कुमार
 2. सुरेश रैना
 3. रविचंद्रन अश्विन
 4. विराट कोहली

Question ID : 65497836505
 Status : Answered
 Chosen Option : 4

Q.25 मई 2021 में, अंतर्राष्ट्रीय ओलंपिक समिति ने प्रतियोगिता में हेरफेर को रोकने के उद्देश्य से संचालित अपने बिलीव इन स्पोर्ट (Believe in Sport)' अभियान के लिए _____ को एथलीट एंबेसडर के रूप में नामित किया।

- Ans 1. PV सिंधु
 2. मनिका बत्रा
 3. मैरी कॉम
 4. साइखोम मीराबाई चानू

Question ID : 65497836514
 Status : Answered
 Chosen Option : 4

Q.1 एक डेयरी मालिक प्रतिदिन 3 किस्मों - फुल क्रीम, टॉड और डबल टॉड - के एक लीटर के पैकेटों में 528 लीटर दूध बेचता है। टॉड दूध के पैकेटों की बिक्री, फुल क्रीम दूध के पैकेटों की तुलना में 80% अधिक है, और डबल टॉड दूध के पैकेटों की बिक्री, टॉड दूध के पैकेटों की तुलना में 60% कम है। वह प्रतिदिन डबल टॉड दूध के कितने पैकेट बेचता है?

- Ans
- 1. 100
 - 2. 112
 - 3. 108
 - 4. 110

Question ID : 65497836540
Status : Answered
Chosen Option : 3

Q.2 यदि केलों को ₹7 प्रति केले के बजाय ₹10 प्रति केले के मूल्य पर बेचा जाता है, तो कुछ केलों के विक्रय मूल्यों के बीच का अंतर ₹990 है। यदि सभी केलों का क्रय मूल्य ₹1,980 है, और यदि अर्जित लाभ 18% है, तो दस केलों का विक्रय मूल्य (₹ में) कितना होगा?

- Ans
- 1. 90.20
 - 2. 70.80
 - 3. 99.00
 - 4. 60.00

Question ID : 65497836519
Status : Not Attempted and Marked For Review
Chosen Option : --

Q.3 B किसी कार्य को पूरा करने के लिए, A द्वारा लिए गए दिनों की संख्या का पाँच गुना लेता है। एक साथ काम करके, वे काम को 15 दिनों में पूरा कर देते हैं। उसी काम को पूरा करने में अकेले A को कितने दिन लगेंगे?

- Ans
- 1. 20
 - 2. 12
 - 3. 18
 - 4. 16

Question ID : 65497836523
Status : Answered
Chosen Option : 3

Q.4 A, B और C तीन संख्याएँ हैं। A, B से 45% अधिक है और C, A से 60% कम है। B, C से कितने प्रतिशत (निकटतम पूर्णांक तक) अधिक है?

- Ans
- 1. 42%
 - 2. 72%
 - 3. 70%
 - 4. 68%

Question ID : 65497836533
Status : Answered
Chosen Option : 1

Q.5 वह छोटी से छोटी संख्या कौन सी है, जो 4 से 9 तक की सभी संख्याओं से विभाज्य है?

- Ans
- 1. 2540
 - 2. 2520
 - 3. 1520
 - 4. 840

Question ID : 65497836539
Status : Answered
Chosen Option : 2

Q.6 18 m लंबी, 10 m ऊंची और 40 cm चौड़ी एक दीवार को 30 cm, 15 cm और 10 cm की विमाओं वाली ईंटों का उपयोग करके निर्मित करना है। कितनी ईंटों (हजारों में) की आवश्यकता होगी?

- Ans
- 1. 16000
 - 2. 16
 - 3. 14
 - 4. 14000

Question ID : 65497836518
Status : Not Attempted and Marked For Review
Chosen Option : --

Q.7 10 और 20 के बीच 3 के पहले तीन गुणजों के औसत और 4 के पहले 2 गुणजों के औसत के बीच का अंतर ज्ञात करें।

- Ans
- 1. 2
 - 2. 3
 - 3. 1
 - 4. 4

Question ID : 65497836528
Status : Answered
Chosen Option : 3

Q.8 $10 - [378 \div 6 \text{ of } 9 - (25 - 72 \div 3)]$ का मान कितना होगा?

- Ans
- 1. 4
 - 2. 1
 - 3. 3
 - 4. 9

Question ID : 65497836521
Status : Answered
Chosen Option : 1

Q.9 ₹75,000 की धनराशि का, वार्षिक आधार पर चक्रवृद्धि होने वाली एक निश्चित वार्षिक ब्याज दर पर 2 वर्षों में प्राप्त चक्रवृद्धि ब्याज ₹6,120 है। यदि ब्याज त्रैमासिक आधार पर चक्रवृद्धि होता है, तो ₹1,00,000 की धनराशि की उसी ब्याज दर पर एक वर्ष के बाद प्राप्त धनराशि (₹ में, दशमलव के दो स्थानों तक सही) कितनी होगी?

- Ans
- ✓ 1. 1,04,060.40
 - ✗ 2. 1,00,400.60
 - ✗ 3. 1,06,040.20
 - ✗ 4. 1,40,060.50

Question ID : 65497836520

Status : Not Attempted and Marked For Review

Chosen Option : --

Q.10 $72 - [20 - \{10 - (6 - \overline{6-4})\}]$ का मान कितना है?

- Ans
- ✗ 1. 48
 - ✓ 2. 58
 - ✗ 3. 44
 - ✗ 4. 56

Question ID : 65497836524

Status : Answered

Chosen Option : 2

Q.11 कोई व्यक्ति 1000 m लंबा पुल 6 min में पार करता है। उसकी चाल (km/h में) कितनी है?

- Ans
- ✗ 1. 8
 - ✗ 2. 16
 - ✓ 3. 10
 - ✗ 4. 12

Question ID : 65497836525

Status : Answered

Chosen Option : 3

Q.12 एक निश्चित धनराशि, एकसमान वार्षिक साधारण ब्याज दर से 4 वर्ष में ₹12,420 और 7 वर्ष में ₹14,985 हो जाती है। वह धनराशि कितनी है?

- Ans
- ✓ 1. ₹9,000
 - ✗ 2. ₹8,400
 - ✗ 3. ₹9,500
 - ✗ 4. ₹8,800

Question ID : 65497836537

Status : Answered

Chosen Option : 1

Q.13 पहली चार अभाज्य संख्याओं के लघुत्तम समापवर्त्य (LCM) का, पहली तीन भाज्य संख्याओं के महत्तम समापवर्तक (HCF) से अनुपात ज्ञात करें।

- Ans
- 1. 168 : 1
 - 2. 105 : 1
 - 3. 6 : 1
 - 4. 26 : 1

Question ID : 65497836527
Status : Answered
Chosen Option : 2

Q.14 यदि $A : B = 8 : 9$ और $B : C = 12 : 55$ है, तो $A : B : C$ का मान क्या है?

- Ans
- 1. 32 : 36 : 165
 - 2. 32 : 165 : 36
 - 3. 32 : 36 : 156
 - 4. 36 : 32 : 165

Question ID : 65497836517
Status : Answered
Chosen Option : 1

Q.15 दुकानदार ने एक वस्तु की कीमत इस प्रकार अंकित की जिससे वह उसके क्रय मूल्य पर 30% का लाभ अर्जित करे। फिर उसने अंकित मूल्य पर 12% की छूट पर इसे बेच दिया। उसके द्वारा अर्जित वास्तविक प्रतिशत लाभ ज्ञात करें।

- Ans
- 1. 15.2%
 - 2. 14.2%
 - 3. 14.4%
 - 4. 13.8%

Question ID : 65497836532
Status : Not Attempted and Marked For Review
Chosen Option : --

Q.16 एक वस्तु को ₹2,900 में बेचकर एक दुकानदार 16% का लाभ अर्जित करता है। यदि उसने इसे ₹3,050 में बेचा होता, तो उसका प्रतिशत लाभ क्या होता?

- Ans
- 1. 20.5%
 - 2. 22%
 - 3. 21%
 - 4. 20%

Question ID : 65497836541
Status : Answered
Chosen Option : 2

Q.17 यदि 51, x , 72 और 96 समानुपाती हैं, तो $(2x+8)$ और $(x+13)$ के बीच मध्यानुपात कितना होगा?

- Ans
- 1. 112
 - 2. 117
 - 3. 96
 - 4. 108

Question ID : 65497836536
Status : Answered
Chosen Option : 4

Q.18 दुकानदार A, ₹500 के अंकित मूल्य पर 8% और 12% की दो क्रमिक छूट देता है। एक अन्य दुकानदार B, उसी अंकित मूल्य वाली उसी वस्तु पर 20% की एकल छूट देता है। उनके विक्रय मूल्यों में अंतर ज्ञात करें।

- Ans
- 1. ₹4.40
 - 2. ₹4.80
 - 3. ₹3.20
 - 4. ₹5.20

Question ID : 65497836526
Status : Answered
Chosen Option : 2

Q.19 समान लंबाई की दो ट्रेनें A और B समानांतर पटरियों पर एक ही दिशा में क्रमशः 64.8 km/h और 50.4 km/h की चाल से चल रही हैं। ट्रेन A, ट्रेन B को एक मिनट में पार करती है। प्रत्येक ट्रेन की लंबाई (m में) ज्ञात करें।

- Ans
- 1. 150
 - 2. 125
 - 3. 100
 - 4. 120

Question ID : 65497836535
Status : Not Answered
Chosen Option : --

Q.20 A और B मिलकर किसी कार्य को 24 दिनों में पूरा कर सकते हैं। B और C मिलकर इसे 30 दिनों में पूरा कर सकते हैं। यदि A की दक्षता C की तुलना में दोगुनी है, तो B अकेले उसी कार्य को पूरा करने के लिए कितने दिनों का समय लेगा?

- Ans
- 1. 36
 - 2. 40
 - 3. 30
 - 4. 48

Question ID : 65497836534
Status : Answered
Chosen Option : 2

Q.21 एक वृत्ताकार भूखंड का परिमाण 440 m है। इसके परितः 5 m चौड़ा वृत्ताकार पथ है। पथ का क्षेत्रफल (m^2 में, $\pi = \frac{22}{7}$ मानते हुए) लगभग कितना होगा?

- Ans
- ✓ 1. 2278.6
 - ✗ 2. 1822.9
 - ✗ 3. 2121.4
 - ✗ 4. 1964.3

Question ID : 65497836538
Status : Not Answered
Chosen Option : --

Q.22 ₹7,800 की राशि को A, B और C में इस प्रकार विभाजित किया जाता है कि B का हिस्सा A के हिस्से का $\frac{1}{3}$ है और C का हिस्सा B के हिस्से से 20% अधिक है। A का हिस्सा ज्ञात करें।

- Ans
- ✓ 1. ₹4,500
 - ✗ 2. ₹2,500
 - ✗ 3. ₹1,500
 - ✗ 4. ₹3,000

Question ID : 65497836529
Status : Answered
Chosen Option : 1

Q.23 23 छात्रों का औसत भार 53 kg दर्ज किया गया था। एक शिक्षक का भार भी शामिल करने पर, औसत भार में 100 g की वृद्धि हुई। शिक्षक का भार (kg में) ज्ञात करें।

- Ans
- ✗ 1. 55.8
 - ✗ 2. 56.4
 - ✓ 3. 55.4
 - ✗ 4. 56.2

Question ID : 65497836531
Status : Answered
Chosen Option : 3

Q.24 एक निश्चित धनराशि के लिए, 5% वार्षिक ब्याज दर पर, 2 वर्ष के साधारण ब्याज (SI) और वार्षिक रूप से चक्रवृद्धि होने वाले चक्रवृद्धि ब्याज (CI) के बीच का अंतर ₹25.00 है। वह धनराशि ज्ञात करें।

- Ans
- ✗ 1. ₹12,000
 - ✗ 2. ₹8,000
 - ✗ 3. ₹7,500
 - ✓ 4. ₹10,000

Question ID : 65497836530
Status : Answered
Chosen Option : 4

Q.25 एक व्यक्ति ने एक पुरानी वस्तु ₹5,400 में खरीदी और उसकी मरम्मत पर ₹200 खर्च किए। उसने इसे ₹6,300 में बेच दिया। उसका लाभ प्रतिशत क्या है?

Ans 1. 12.5

2. 10

3. 12

4. 14

Question ID : 65497836522

Status : Answered

Chosen Option : 1

Section : Part D English

Q.1 Select the INCORRECTLY spelt word.

Ans 1. Pronunciation

2. Prolong

3. Procrastination

4. Proactivity

Question ID : 65497836553

Status : Answered

Chosen Option : 2

Q.2 Select the most appropriate meaning of the given idiom.

Gift of the gab

Ans 1. Ability to draw sketches

2. Ability to please others

3. Ability to speak confidently and clearly

4. Ability to speak in a sarcastic tone

Question ID : 65497836552

Status : Answered

Chosen Option : 3

Q.3 Select the most appropriate option to fill in the blank.

If you do not pay your _____ you will be imprisoned.

Ans 1. debit

2. debt

3. damage

4. deed

Question ID : 65497836561

Status : Answered

Chosen Option : 2

Q.4 Select the **INCORRECTLY** spelt word.

- Ans
- 1. Progress
 - 2. Vicious
 - 3. Accuse
 - 4. Acclame

Question ID : 65497836549
 Status : Answered
 Chosen Option : 4

Q.5 Select the most appropriate option that can substitute the underlined segment in the given sentence. If there is no need to substitute it, select 'No substitution required'.

Skydiving was a rare opportunity that I had got, so, even though I was exhausted, I decided to go for it.

- Ans
- 1. No substitution required
 - 2. as yet though
 - 3. still even if
 - 4. so despite however

Question ID : 65497836542
 Status : Answered
 Chosen Option : 3

Q.6 Select the option that can be used as a one-word substitute for the given group of words.

The action of killing oneself intentionally

- Ans
- 1. Parricide
 - 2. Homicide
 - 3. Suicide
 - 4. Genocide

Question ID : 65497836557
 Status : Answered
 Chosen Option : 3

Q.7 Select the option that will improve the underlined part of the given sentence. In case no improvement is needed, select 'No improvement required'.

Since he is strong, he is quite timid.

- Ans
- 1. Although
 - 2. No improvement required
 - 3. Because
 - 4. Besides

Question ID : 65497836559
 Status : Answered
 Chosen Option : 1

Q.8 Select the most appropriate ANTONYM of the given word.

Aggressive

- Ans 1. Sharp
 2. Calm
 3. Excited
 4. Simple

Question ID : 65497836558
Status : Answered
Chosen Option : 2

Q.9 Select the most appropriate synonym of the given word.

Amiable

- Ans 1. Honest
 2. Dishonest
 3. Friendly
 4. Disagreeable

Question ID : 65497836551
Status : Answered
Chosen Option : 3

Q.10 Select the most appropriate option to fill in the blank.

He has been _____ in his performance throughout.

- Ans 1. conducive
 2. connotative
 3. consistent
 4. constructive

Question ID : 65497836554
Status : Answered
Chosen Option : 4

Q.11 The following sentence has been split into four segments. Identify the segment that contains a grammatical error.

The teacher punished him / and told him / that he does not / need to give a clarification.

- Ans 1. need to give a clarification
 2. The teacher punished him
 3. and told him
 4. that he does not

Question ID : 65497836550
Status : Answered
Chosen Option : 3

Q.12 Select the option that can be used as a one-word substitute for the given group of words.

A person who takes care of cattle

- Ans 1. Gardener
 2. Cowherd
 3. Guard
 4. Landlord

Question ID : 65497836545
 Status : Answered
 Chosen Option : 2

Q.13 Select the most appropriate option that can substitute the underlined segment in the given sentence. If there is no need to substitute it, select 'No substitution required'.

The interviews will be held between 11 a.m. to 5 p.m.

- Ans 1. will be held from
 2. will be held at
 3. No substitution required
 4. will hold during

Question ID : 65497836544
 Status : Answered
 Chosen Option : 1

Q.14 Select the most appropriate synonym of the given word.

Immerse

- Ans 1. Immediate
 2. Immoral
 3. Submission
 4. Submerge

Question ID : 65497836556
 Status : Answered
 Chosen Option : 4

Q.15 Select the most appropriate meaning of the given idiom.

Blue blood

- Ans 1. Rare sight
 2. Noble birth
 3. Bad mood
 4. Weak person

Question ID : 65497836560
 Status : Answered
 Chosen Option : 3

Q.16 Select the option that can be used as a one-word substitute for the given group of words.

Lack of feeling

- Ans 1. Sympathy
 2. Apathy
 3. Telepathy
 4. Empathy

Question ID : 65497836548
Status : Answered
Chosen Option : 4

Q.17 Select the most appropriate ANTONYM of the given word.

Frivolous

- Ans 1. Quiet
 2. Wise
 3. Idle
 4. Petty

Question ID : 65497836547
Status : Answered
Chosen Option : 1

Q.18 The following sentence has been split into four segments. Identify the segment that contains a grammatical error.

Philip was / too proud / for extending / a hand of friendship.

- Ans 1. a hand of friendship
 2. Philip was
 3. for extending
 4. too proud

Question ID : 65497836546
Status : Answered
Chosen Option : 4

Q.19 Parts of the given sentence have been given as options. One of them contains a grammatical error. Select the option that has the error.

Go to the ninth block on the left-hand side and take a sharpest turn to reach Bunny's house on the right.

- Ans 1. on the right
 2. Go to the ninth block
 3. Bunny's house
 4. take a sharpest turn

Question ID : 65497836555
Status : Answered
Chosen Option : 1

Q.20 Select the most appropriate option to fill in the blank.

The _____ cannot be a panacea for all respiratory infections.

- Ans
- 1. healing
 - 2. care
 - 3. diagnosis
 - 4. treatment

Question ID : 65497836543

Status : Answered

Chosen Option : 1

Comprehension:

In the following passage, some words have been deleted. Read the passage carefully and select the most appropriate option to fill in each blank.

The human skeleton is the (1)_____ framework of our body. It gives shape and support to the body. (2)_____, it provides protection, makes blood cells, stores minerals and regulates hormones. The spinal cord is an (3)_____ part of our body. The ribcage protects our lungs and heart. To increase the (4)_____ of our bones, we should include calcium in our diet. All our (5)_____ organs are protected by this skeletal system.

SubQuestion No : 21

Q.21 Select the most appropriate option to fill in blank no. 1.

- Ans
- 1. external
 - 2. superficial
 - 3. internal
 - 4. middle

Question ID : 65497836563

Status : Answered

Chosen Option : 3

Comprehension:

In the following passage, some words have been deleted. Read the passage carefully and select the most appropriate option to fill in each blank.

The human skeleton is the (1)_____ framework of our body. It gives shape and support to the body. (2)_____, it provides protection, makes blood cells, stores minerals and regulates hormones. The spinal cord is an (3)_____ part of our body. The ribcage protects our lungs and heart. To increase the (4)_____ of our bones, we should include calcium in our diet. All our (5)_____ organs are protected by this skeletal system.

SubQuestion No : 22

Q.22 Select the most appropriate option to fill in blank no. 2.

- Ans
- 1. Besides
 - 2. Unless
 - 3. Beside
 - 4. Although

Question ID : 65497836564

Status : Answered

Chosen Option : 4

Comprehension:

In the following passage, some words have been deleted. Read the passage carefully and select the most appropriate option to fill in each blank.

The human skeleton is the (1)_____ framework of our body. It gives shape and support to the body. (2)_____, it provides protection, makes blood cells, stores minerals and regulates hormones. The spinal cord is an (3)_____ part of our body. The ribcage protects our lungs and heart. To increase the (4)_____ of our bones, we should include calcium in our diet. All our (5)_____ organs are protected by this skeletal system.

SubQuestion No : 23

Q.23 Select the most appropriate option to fill in blank no. 3.

- Ans 1. important
 2. eternal
 3. alert
 4. insignificant

Question ID : 65497836565
 Status : Answered
 Chosen Option : 1

Comprehension:

In the following passage, some words have been deleted. Read the passage carefully and select the most appropriate option to fill in each blank.

The human skeleton is the (1)_____ framework of our body. It gives shape and support to the body. (2)_____, it provides protection, makes blood cells, stores minerals and regulates hormones. The spinal cord is an (3)_____ part of our body. The ribcage protects our lungs and heart. To increase the (4)_____ of our bones, we should include calcium in our diet. All our (5)_____ organs are protected by this skeletal system.

SubQuestion No : 24

Q.24 Select the most appropriate option to fill in blank no. 4.

- Ans 1. value
 2. length
 3. strength
 4. ability

Question ID : 65497836566
 Status : Answered
 Chosen Option : 3

Comprehension:

In the following passage, some words have been deleted. Read the passage carefully and select the most appropriate option to fill in each blank.

The human skeleton is the (1)_____ framework of our body. It gives shape and support to the body. (2)_____, it provides protection, makes blood cells, stores minerals and regulates hormones. The spinal cord is an (3)_____ part of our body. The ribcage protects our lungs and heart. To increase the (4)_____ of our bones, we should include calcium in our diet. All our (5)_____ organs are protected by this skeletal system.

SubQuestion No : 25

Q.25 Select the most appropriate option to fill in blank no. 5.

- Ans 1. fundamental
 2. secret
 3. secondary
 4. vital

Question ID : 65497836567
 Status : Answered
 Chosen Option : 2

Q.1 दिए गए शब्द का समानार्थी शब्द बताइए।

कथा

- Ans 1. उपन्यास
 2. आख्यान
 3. गीत
 4. नाटक

Question ID : 65497836569
 Status : Not Answered
 Chosen Option : --

Q.2 दिये गये वाक्य के किस भाग में त्रुटि है?

हमारी शिक्षा प्रणाली में कई दोष हैं।

- Ans 1. हमारी
 2. शिक्षा प्रणाली
 3. में कई
 4. दोष हैं।

Question ID : 65497836585
 Status : Not Answered
 Chosen Option : --

Q.3 सही वर्तनी वाले शब्द का चयन करें।

- Ans 1. आशीवाद
 2. आशिरवाद
 3. आशिवादी
 4. आशीर्वाद

Question ID : 65497836579
 Status : Not Answered
 Chosen Option : --

Q.4 निम्नलिखित प्रश्न में, दिए गए चार विकल्पों में से, उस विकल्प का चयन करें जो मुहावरे का अर्थ व्यक्त करता है।

गर्दन उठाना

- Ans 1. चुप कराना
 2. लज्जित करना
 3. विरोध करना
 4. होश संभालना

Question ID : 65497836578
 Status : Not Answered
 Chosen Option : --

Q.5 रिक्त स्थान को भरने के लिए सबसे उपयुक्त शब्द का चयन करें।

निकम्मे व्यक्ति सदैव ख्याली _____ ही पकाते रहते हैं।

- Ans
- 1. पुलाव
 - 2. चने
 - 3. खिचड़ी
 - 4. चावल

Question ID : 65497836574
Status : Not Answered
Chosen Option : --

Q.6 दिए गए शब्द का विलोम चुनें।

ग्राह्य

- Ans
- 1. सुग्राह्य
 - 2. अग्राह्य
 - 3. विग्राह्य
 - 4. अपग्राह्य

Question ID : 65497836575
Status : Not Answered
Chosen Option : --

Q.7 'एकाएक घटित होने वाला' वाक्यांश के लिए एक शब्द होगा-

- Ans
- 1. यांत्रिक
 - 2. तात्कालिक
 - 3. आश्चय
 - 4. आकस्मिक

Question ID : 65497836584
Status : Not Answered
Chosen Option : --

Q.8 दिए गए वाक्य का वो भाग ज्ञात करें जिसमें कोई त्रुटि है। यदि कोई त्रुटि नहीं है, तो 'कोई त्रुटि नहीं है' चुनें।

युवराज ने (1)\ एक ओवर में (2)\ छह छक्के लगाया (3)\ कोई त्रुटि नहीं है (4)

- Ans
- 1. 4
 - 2. 2
 - 3. 3
 - 4. 1

Question ID : 65497836568
Status : Not Answered
Chosen Option : --

Q.9 रिक्त स्थान को भरने के लिए सबसे उपयुक्त विकल्प का चयन करें।

निखिल हारमोनियम बजाने में _____ है।

- Ans
- 1. दक्ष
 - 2. कारीगर
 - 3. प्रवीण
 - 4. निपुण

Question ID : 65497836587
Status : Not Answered
Chosen Option : --

Q.10 दिए गए शब्द के विलोम शब्द का चयन करें।

ऐक्य

- Ans
- 1. मतैक्य
 - 2. अनेक
 - 3. अनैक्य
 - 4. विभाज्य

Question ID : 65497836572
Status : Not Answered
Chosen Option : --

Q.11 जितनी जल्दी हो सके उतनी जल्दी काम कीजिए।

रेखांकित शब्द समूह के स्थान पर उचित शब्द प्रस्थापित कीजिए।

- Ans
- 1. आराम से
 - 2. शांति
 - 3. यथाशीघ्र
 - 4. धीरे-धीरे

Question ID : 65497836583
Status : Not Answered
Chosen Option : --

Q.12 दिए गए वाक्य का वो भाग ज्ञात करें जिसमें कोई त्रुटि है। यदि कोई त्रुटि नहीं है, तो 'कोई त्रुटि नहीं है' चुनें।

लोग आपकी (1)\ बुद्धिमत्ता की (2)\ सराहना करते हैं (3)\ कोई त्रुटि नहीं है (4)

- Ans
- 1. 2
 - 2. 3
 - 3. 1
 - 4. 4

Question ID : 65497836570
Status : Not Answered
Chosen Option : --

Q.13 निम्नलिखित प्रश्न में, दिए गए चार विकल्पों में से, उस विकल्प का चयन करें जो मुहावरे का अर्थ व्यक्त करता है।

गुरु घंटाल होना

- Ans 1. अयोग्य होना
 2. मूर्ख होना
 3. आलसी होना
 4. बहुत धूर्त होना

Question ID : 65497836576
 Status : Not Answered
 Chosen Option : --

Q.14 रिक्त स्थान को भरने के लिए सबसे उपयुक्त विकल्प का चयन करें।

तेल का व्यापार उसका खानदानी _____ है।

- Ans 1. मन
 2. पेशा
 3. शौक
 4. जागीर

Question ID : 65497836582
 Status : Not Answered
 Chosen Option : --

Q.15 दिये गये वाक्यांश के लिए एक शब्द दीजिये।

जो सब जानता हो

- Ans 1. सर्वज्ञ
 2. विज्ञ
 3. सुज्ञ
 4. अज्ञ

Question ID : 65497836577
 Status : Not Answered
 Chosen Option : --

Q.16 दिये गये वाक्य में रेखांकित अंश को प्रतिस्थापित करने के लिए सबसे उपयुक्त विकल्प का चयन करें।

सब लोग अपनी राय दें।

- Ans 1. अपना-अपना
 2. अपना
 3. अपनी-अपनी
 4. अपने

Question ID : 65497836581
 Status : Not Answered
 Chosen Option : --

Q.17 दिए गए वाक्य में रेखांकित खंड को प्रतिस्थापित करने के लिए सबसे उपयुक्त विकल्प का चयन करें। यदि इसे प्रतिस्थापित करने की आवश्यकता नहीं है, तो विकल्प 'किसी बदलाव की आवश्यकता नहीं है' का चयन करें।

गुरु जी की औदार्य की लोग प्रशंसा करते हैं।

- Ans
- 1. के औदार्य की लोग प्रशंसा करते हैं।
 - 2. किसी बदलाव की आवश्यकता नहीं है।
 - 3. की औदार्य का लोग प्रशंसा करते हैं।
 - 4. के औदार्य की लोग प्रशंसा करते हैं।

Question ID : 65497836571
Status : Not Answered
Chosen Option : --

Q.18 'रजनी' का पर्यायवाची है-

- Ans
- 1. वसुधा
 - 2. रमणी
 - 3. निशा
 - 4. शारदा

Question ID : 65497836586
Status : Not Answered
Chosen Option : --

Q.19 सही वर्तनी वाले शब्द का चयन करें।

- Ans
- 1. आन्धुनिक
 - 2. आधुनीक
 - 3. अधुनिक
 - 4. आधुनिक

Question ID : 65497836580
Status : Not Answered
Chosen Option : --

Q.20 दिए गये वाक्यांश के लिए एक शब्द दीजिये।

जिसके समान कोई दूसरा न हो

- Ans
- 1. अनुपम
 - 2. अद्भुत
 - 3. अनूठा
 - 4. अद्वितीय

Question ID : 65497836573
Status : Not Answered
Chosen Option : --

Comprehension:

दिए गए गद्यांश में कुछ शब्द हटा दिए गए हैं। दिए गए विकल्पों की सहायता से रिक्त स्थान भरें। प्रत्येक संख्या के लिए सबसे उपयुक्त विकल्प का चयन करें।

अपने इतिहास के अधिकांश कालों में भारत एक सांस्कृतिक इकाई होते हुए भी पारस्परिक युद्धों से (1) _____ होता रहा। यहाँ के शासक अपने शासन-कौशल में धूर्त एवं (2) _____ थे। समय-समय पर यहाँ दुर्भिक्ष, (3) _____ तथा प्लेग के प्रकोप होते रहे, जिससे सहस्रों व्यक्तियों की मृत्यु हुई। (4) _____ असमानता धर्मसंगत मानी गई, जिसके फलस्वरूप नीच कुल के व्यक्तियों का जीवन (5) _____ बन गया। इन सबके होते हुए भी हमारा विचार है कि पुरातन संसार के किसी भी भाग में मनुष्य के मनुष्य तथा मनुष्य के राज से ऐसे सुंदर एवं मानवीय संबंध नहीं रहे हैं। गद्यांश के आधार पर उत्तर दीजिए।

SubQuestion No : 21

Q.21 गद्यांश के रिक्त स्थान (1) के लिए सर्वाधिक उपयुक्त शब्द होगा-

- Ans 1. विकसित
 2. जर्जर
 3. आप्लावित
 4. पोषित

Question ID : 65497836589

Status : Not Answered

Chosen Option : --

Comprehension:

दिए गए गद्यांश में कुछ शब्द हटा दिए गए हैं। दिए गए विकल्पों की सहायता से रिक्त स्थान भरें। प्रत्येक संख्या के लिए सबसे उपयुक्त विकल्प का चयन करें।

अपने इतिहास के अधिकांश कालों में भारत एक सांस्कृतिक इकाई होते हुए भी पारस्परिक युद्धों से (1) _____ होता रहा। यहाँ के शासक अपने शासन-कौशल में धूर्त एवं (2) _____ थे। समय-समय पर यहाँ दुर्भिक्ष, (3) _____ तथा प्लेग के प्रकोप होते रहे, जिससे सहस्रों व्यक्तियों की मृत्यु हुई। (4) _____ असमानता धर्मसंगत मानी गई, जिसके फलस्वरूप नीच कुल के व्यक्तियों का जीवन (5) _____ बन गया। इन सबके होते हुए भी हमारा विचार है कि पुरातन संसार के किसी भी भाग में मनुष्य के मनुष्य तथा मनुष्य के राज से ऐसे सुंदर एवं मानवीय संबंध नहीं रहे हैं। गद्यांश के आधार पर उत्तर दीजिए।

SubQuestion No : 22

Q.22 गद्यांश के रिक्त स्थान (2) के लिए सर्वाधिक उपयुक्त शब्द होगा-

- Ans 1. सुरक्षित
 2. सहनशील
 3. सतर्क
 4. असावधान

Question ID : 65497836590

Status : Not Answered

Chosen Option : --

Comprehension:

दिए गए गद्यांश में कुछ शब्द हटा दिए गए हैं। दिए गए विकल्पों की सहायता से रिक्त स्थान भरें। प्रत्येक संख्या के लिए सबसे उपयुक्त विकल्प का चयन करें।

अपने इतिहास के अधिकांश कालों में भारत एक सांस्कृतिक इकाई होते हुए भी पारस्परिक युद्धों से (1) _____ होता रहा। यहाँ के शासक अपने शासन-कौशल में धूर्त एवं (2) _____ थे। समय-समय पर यहाँ दुर्भिक्ष, (3) _____ तथा प्लेग के प्रकोप होते रहे, जिससे सहस्रों व्यक्तियों की मृत्यु हुई। (4) _____ असमानता धर्मसंगत मानी गई, जिसके फलस्वरूप नीच कुल के व्यक्तियों का जीवन (5) _____ बन गया। इन सबके होते हुए भी हमारा विचार है कि पुरातन संसार के किसी भी भाग में मनुष्य के मनुष्य तथा मनुष्य के राज से ऐसे सुंदर एवं मानवीय संबंध नहीं रहे हैं। गद्यांश के आधार पर उत्तर दीजिए।

SubQuestion No : 23

Q.23 गद्यांश के रिक्त स्थान (3) के लिए सर्वाधिक उपयुक्त शब्द होगा-

- Ans 1. सूख
 2. वस्त्र
 3. बाढ़
 4. अन्न

Question ID : 65497836591

Status : Not Answered

Chosen Option : --

Comprehension:

दिए गए गद्यांश में कुछ शब्द हटा दिए गए हैं। दिए गए विकल्पों की सहायता से रिक्त स्थान भरें। प्रत्येक संख्या के लिए सबसे उपयुक्त विकल्प का चयन करें।

अपने इतिहास के अधिकांश कालों में भारत एक सांस्कृतिक इकाई होते हुए भी पारस्परिक युद्धों से (1) _____ होता रहा। यहाँ के शासक अपने शासन-कौशल में धूर्त एवं (2) _____ थे। समय-समय पर यहाँ दुर्भिक्ष, (3) _____ तथा प्लेग के प्रकोप होते रहे, जिससे सहस्रों व्यक्तियों की मृत्यु हुई। (4) _____ असमानता धर्मसंगत मानी गई, जिसके फलस्वरूप नीच कुल के व्यक्तियों का जीवन (5) _____ बन गया। इन सबके होते हुए भी हमारा विचार है कि पुरातन संसार के किसी भी भाग में मनुष्य के मनुष्य तथा मनुष्य के राज से ऐसे सुंदर एवं मानवीय संबंध नहीं रहे हैं। गद्यांश के आधार पर उत्तर दीजिए।

SubQuestion No : 24

Q.24 गद्यांश के रिक्त स्थान (4) के लिए सर्वाधिक उपयुक्त शब्द होगा-

- Ans 1. अर्थाधारित
 2. जन्मजात
 3. स्थानगत
 4. कर्मगत

Question ID : 65497836592

Status : Not Answered

Chosen Option : --

Comprehension:

दिए गए गद्यांश में कुछ शब्द हटा दिए गए हैं। दिए गए विकल्पों की सहायता से रिक्त स्थान भरें। प्रत्येक संख्या के लिए सबसे उपयुक्त विकल्प का चयन करें।

अपने इतिहास के अधिकांश कालों में भारत एक सांस्कृतिक इकाई होते हुए भी पारस्परिक युद्धों से (1) _____ होता रहा। यहाँ के शासक अपने शासन-कौशल में धूर्त एवं (2) _____ थे। समय-समय पर यहाँ दुर्मिक्ष, (3) _____ तथा प्लेग के प्रकोप होते रहे, जिससे सहस्रों व्यक्तियों की मृत्यु हुई। (4) _____ असमानता धर्मसंगत मानी गई, जिसके फलस्वरूप नीच कुल के व्यक्तियों का जीवन (5) _____ बन गया। इन सबके होते हुए भी हमारा विचार है कि पुरातन संसार के किसी भी भाग में मनुष्य के मनुष्य तथा मनुष्य के राज से ऐसे सुंदर एवं मानवीय संबंध नहीं रहे हैं। गद्यांश के आधार पर उत्तर दीजिए।

SubQuestion No : 25

Q.25 गद्यांश के रिक्त स्थान (5) के लिए सर्वाधिक उपयुक्त शब्द होगा

- Ans**
- 1. अविकसित
 - 2. सम्पन्न
 - 3. अभिशाप
 - 4. खुशनुमा

Question ID : 65497836593

Status : Not Answered

Chosen Option : --

KD Job Updates

Exam Date	30/11/2021
Exam Time :	12:30 PM - 2:00 PM
Subject	Constable GD 2021

Section : Part A General Intelligence and Reasoning

Q.1 Select the number from among the given options that can replace the question mark (?) in the following series.

144, 289, 484, ?, 1024

- Ans
- 1. 625
 - 2. 725
 - 3. 676
 - 4. 729

Question ID : 65497833819
 Status : Answered
 Chosen Option : 4

Q.2 Select the combination of letters that when sequentially placed in the blanks of the given series will complete the series.

_ b _ p p p _ q p _ p b _ p _

- Ans
- 1. b q b p b p
 - 2. p b q p b q
 - 3. p q b p q p
 - 4. p q p p q b

Question ID : 65497833822
 Status : Answered
 Chosen Option : 3

Q.3 Read the given statements and conclusions carefully. Assuming that the information given in the statements is true, even if it appears to be at variance with commonly known facts, decide which of the given conclusions logically follow(s) from the statements.

Statements:
 All laptops are monitors.
 All monitors are TVs.

Conclusions:
 1. All monitors are laptops.
 2. Some TVs are monitors.
 3. No monitor is a laptop.

- Ans
- 1. Only conclusion 2 follows
 - 2. Only conclusion 1 follows
 - 3. Only conclusion 3 follows
 - 4. Both conclusions 2 and 3 follow

Question ID : 65497833810
 Status : Answered
 Chosen Option : 1

Q.4 Two different positions of the same dice marked with the letters F, G, P, Q, R and S are shown .
Select the letter that will be on the face opposite to the face having the letter 'G'.



- Ans
- 1. R
 - 2. F
 - 3. Q
 - 4. S

Question ID : 65497833803
Status : Answered
Chosen Option : 2

Q.5 Select the option that is related to the third term in the same way as the second term is related to the first term.

PRINT : RNTPI :: LEMON : ?

- Ans
- 1. ELOMN
 - 2. LNEMO
 - 3. EONLM
 - 4. MLNOE

Question ID : 65497833814
Status : Answered
Chosen Option : 3

Q.6 In an imaginary mathematical system, P denotes subtraction, Q denotes division, R denotes addition and S denotes multiplication. All other rules of mathematics are the same as in the existing system. What is the value of the given expression?

106 R 115 Q 23 S 7 P 19

- Ans
- 1. 154
 - 2. 87
 - 3. 45
 - 4. 122

Question ID : 65497833802
Status : Answered
Chosen Option : 4

Q.7 Select the option that is related to the fourth number in the same way as the first number is related to the second number.

54 : 9 :: ? : 7

- Ans
- 1. 56
 - 2. 62
 - 3. 42
 - 4. 60

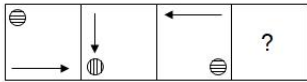
Question ID : 65497833801
Status : Answered
Chosen Option : 3

Q.8 Four letter-clusters have been given, out of which three are alike in some manner and one is different. Select the one that is different.

- Ans 1. HAA
 2. UHH
 3. OFF
 4. IXX

Question ID : 65497833817
 Status : Answered
 Chosen Option : 1

Q.9 Select the figure from among the given options that can replace the question mark (?) in the following series.



- Ans 1.
- 2.
- 3.
- 4.

Question ID : 65497833824
 Status : Answered
 Chosen Option : 4

Q.10 Study the given pattern carefully and select the number that can replace the question mark (?) in it.

5 12 ?
 11 19 25
 26 55 79

- Ans 1. 22
 2. 17
 3. 20
 4. 18

Question ID : 65497833811
 Status : Answered
 Chosen Option : 4

Q.11 In a certain code language, 'go went gone' is written as 'da ma dof', 'he had gone' is written as 'ga dol ma', and 'he was good' is written as 'na ga ca'. How will 'had' be written in that language?

- Ans
- 1. ca
 - 2. ga
 - 3. dol
 - 4. ma

Question ID : 65497833809
 Status : Answered
 Chosen Option : 3

Q.12 Seven friends, M, N, O, P, Q, R and S, are sitting in a straight line, all facing towards the north. N is sitting at the middle position. M is sitting between Q and P. Q is sitting to the immediate left of N. S is sitting to the immediate left of O. M and O are not sitting at any of the ends. Who is sitting at the right end?

- Ans
- 1. R
 - 2. Q
 - 3. N
 - 4. P

Question ID : 65497833800
 Status : Answered
 Chosen Option : 1

Q.13 In a certain code language, 'REACH' is coded as 85139 and 'SUN' is coded as 264. How will 'SEARCH' be coded in that language?

- Ans
- 1. 251839
 - 2. 253819
 - 3. 258139
 - 4. 253189

Question ID : 65497833818
 Status : Answered
 Chosen Option : 1

Q.14 'A×B' means 'A is the brother of B'. 'A-B' means 'A is the mother of B'. 'A÷B' means 'A is the father of B'. Which of the following means 'M is the son of Q'?

- Ans
- 1. M×R÷Q
 - 2. Q÷M×R
 - 3. M÷R×Q
 - 4. M-R÷T

Question ID : 65497833816
 Status : Answered
 Chosen Option : 2

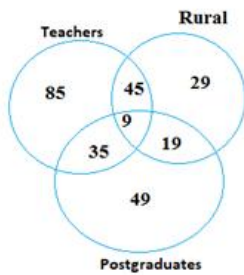
Q.15 Select the number from among the given options that can replace the question mark (?) in the following series.

3, 35, 99, 195, ?

- Ans 1. 323
 2. 225
 3. 325
 4. 299

Question ID : 65497833823
 Status : Answered
 Chosen Option : 1

Q.16 Study the given diagram carefully and answer the question that follows.



What is the number of teachers who are NEITHER rural NOR postgraduates?

- Ans 1. 45
 2. 85
 3. 35
 4. 9

Question ID : 65497833808
 Status : Answered
 Chosen Option : 2

Q.17 Select the letter-cluster from among the given options that can replace the question mark (?) in the following series.

GBL, JEO, MHR, ?

- Ans 1. QJV
 2. OJB
 3. PKU
 4. QKW

Question ID : 65497833805
 Status : Answered
 Chosen Option : 3

Q.18 When 12 is added to a number, it is equal to 2 times the sum of 4 and the number. Find the number.

- Ans
- 1. 10
 - 2. 5
 - 3. 8
 - 4. 4

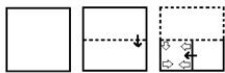
Question ID : 65497833812
 Status : Answered
 Chosen Option : 4

Q.19 Seven friends, L, M, N, O, P, Q and R, are sitting around a circular table, with their backs towards the centre. L is sitting to the immediate right of P. M is not the neighbour of P. O is sitting third to the left of L. Q is sitting between R and O. Who is sitting to the immediate right of L?

- Ans
- 1. N
 - 2. M
 - 3. Q
 - 4. R

Question ID : 65497833807
 Status : Answered
 Chosen Option : 2

Q.20 The sequence of folding a piece of paper and the manner in which the folded paper has been cut is shown in the following figures. How would this paper look when unfolded?



- Ans
- 1.
 - 2.
 - 3.
 - 4.

Question ID : 65497833813
 Status : Answered
 Chosen Option : 1

Q.21 'Patna' is related to 'Bihar' in the same way as 'Dispur' is related to '_____'.
 Ans 1. Nagaland
 2. Mizoram
 3. Meghalaya
 4. Assam

Question ID : 65497833806
 Status : Answered
 Chosen Option : 4

Q.22 In a certain code language, 'SPIRIT' is written as 'WKMIMG'. How will 'GLOBAL' be written in that language?
 Ans 1. GTYOOX
 2. GOTYXO
 3. KOSYEO
 4. KSOEYO

Question ID : 65497833815
 Status : Answered
 Chosen Option : 3

Q.23 Select the correct mirror image of the given combination when the mirror is placed at 'PQ' as shown.



Ans 1. LƆVNIƆƆE
 2. LƆVNIƆƆE
 3. ƆNIƆƆE TRIANGLE
 4. TRIANGLE

Question ID : 65497833820
 Status : Answered
 Chosen Option : 4

Q.24 Select the correct option that indicates the arrangement of the given words in the order in which they appear in an English dictionary.

- i. Declaim
- ii. Decline
- iii. Decisive
- iv. Declare
- v. Decode

Ans 1. i, iv, ii, iii, v
 2. i, ii, iv, iii, v
 3. v, iii, iv, ii, i
 4. iii, i, iv, ii, v


Question ID : 65497833821
 Status : Answered
 Chosen Option : 4

Q.25 Select the option in which the given figure is embedded (rotation is NOT allowed).




Ans

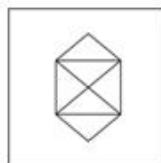
1.




2.



3.



4.



Question ID : 65497833804
 Status : Answered
 Chosen Option : 3

Section : Part B General Knowledge and General Awareness

Q.1 In November 2020, who among the following inaugurated the 'Lilawati Awards', which is an initiative of All India Council for Technical Education?

Ans 1. Rajiv Kumar

2. Amit Shah

3. Harsh Vardhan

4. Ramesh Pokhriyal 'Nishank'

Question ID : 65497833832
 Status : Not Answered
 Chosen Option : --

Q.2 Which of the following compounds contains an ionic bond?

Ans 1. CHCl_3

2. NaCl

3. N_2

4. CH_4

Question ID : 65497833846
 Status : Answered
 Chosen Option : 2

Q.3 Manika Batra is famous as an Indian _____.

- Ans
- 1. basketball player
 - 2. swimmer
 - 3. table tennis player
 - 4. athlete

Question ID : 65497833840
Status : Not Answered
Chosen Option : --

Q.4 Which among the following monuments is in Rajasthan?

- Ans
- 1. Ujjayanta Palace
 - 2. Hawa Mahal
 - 3. Bara Imambara
 - 4. Bibi Ka Maqbara

Question ID : 65497833827
Status : Not Answered
Chosen Option : --

Q.5 Through the Royal Titles Act (1876), Queen Victoria assumed the title of 'Kaiser-i-Hind' or Queen Empress of India. Who was the Viceroy of British India when Queen Victoria assumed the title 'Kaiser-i-Hind'?

- Ans
- 1. Lord Canning
 - 2. Lord Ripon
 - 3. Lord Lansdowne
 - 4. Lord Lytton

Question ID : 65497833835
Status : Not Answered
Chosen Option : --

Q.6 Which of the following types of goods is defined as 'the goods that are identical, similar or comparable to another product, in the eyes of the consumer, such that they can either fully or partly satisfy the same needs of the consumer'?

- Ans
- 1. Capital goods
 - 2. Intermediate goods
 - 3. Substitute goods
 - 4. Consumer goods

Question ID : 65497833825
Status : Not Answered
Chosen Option : --

Q.7 India and Bangladesh are the leading producers of _____.

- Ans
- 1. jute
 - 2. millet
 - 3. coffee
 - 4. tea

Question ID : 65497833843
Status : Not Answered
Chosen Option : --

Q.8 Which of the following was NOT the theme for Union Budget 2020-21?

- Ans
- 1. Develop a Caring Society
 - 2. Aspirational India
 - 3. Economic Development for All
 - 4. Education for All

Question ID : 65497833834
Status : Not Answered
Chosen Option : --

Q.9 Pressure is equal to thrust divided by _____.

- Ans
- 1. area
 - 2. mass
 - 3. Force
 - 4. length

Question ID : 65497833829
Status : Answered
Chosen Option : 1

Q.10 _____ became the first Indian to win the Fed Cup Heart Award 2020 for Asia/Oceania zone, for her successful return to the court post motherhood.

- Ans
- 1. Ankita Raina
 - 2. Riya Bhatia
 - 3. Sania Mirza
 - 4. Rutuja Bhosale

Question ID : 65497833844
Status : Not Answered
Chosen Option : --

Q.11 Which of the following statements about the Equal Remuneration Act of 1976 is INCORRECT?

- Ans
- 1. It applies to certain parts of India.
 - 2. It is a Central Legislation.
 - 3. It provides for prevention of discrimination against women at workplace.
 - 4. It provides for payment of equal remuneration to men and women, in the matter of employment.

Question ID : 65497833839
Status : Not Answered
Chosen Option : --

Q.12 Malala Yousafzai is the youngest Nobel Peace Prize Laureate, having being awarded the prize when she was only 17 years old. In which year was she awarded this Nobel Peace Prize?

- Ans
- 1. 2016
 - 2. 2019
 - 3. 2018
 - 4. 2014

Question ID : 65497833830
Status : Not Answered
Chosen Option : --

Q.13 The Ministry of Information and Broadcasting announced _____ as the new President of the Film and Television Institute of India in September 2020.

- Ans
- 1. Mahesh Bhatt
 - 2. Anupam Kher
 - 3. Gajendra Chauhan
 - 4. Shekhar Kapur

Question ID : 65497833841
Status : Not Answered
Chosen Option : --

Q.14 Which of the following grasslands are present in North America?

- Ans
- 1. Prairies
 - 2. Steppes
 - 3. Pampas
 - 4. Downs

Question ID : 65497833826
Status : Answered
Chosen Option : 1

Q.15 How many members represent Himachal Pradesh in the 17th Lok Sabha as of 22 November 2020?

- Ans
- 1. 12
 - 2. 6
 - 3. 4
 - 4. 8

Question ID : 65497833831
Status : Not Answered
Chosen Option : --

Q.16 Nizam-ul-Mulk Asaf Jah, the founder of Hyderabad state, was the most powerful member at the court of the _____ Farrukh Siyar.

- Ans
- 1. Mughal Emperor
 - 2. Gupta Emperor
 - 3. Khalji Emperor
 - 4. Rajput Emperor

Question ID : 65497833838
Status : Not Answered
Chosen Option : --

Q.17 World Pneumonia Day is observed on:

- Ans
- 1. 18 December
 - 2. 5 September
 - 3. 12 November
 - 4. 15 October

Question ID : 65497833848
Status : Marked For Review
Chosen Option : 3

Q.18 Who among the following is the founder of Fit India movement?

- Ans
- 1. Kiren R jiju
 - 2. Amit Shah
 - 3. Narendra Modi
 - 4. Suparno Satpathy

Question ID : 65497833833
Status : Not Answered
Chosen Option : --

Q.19 India completed the 50th anniversary of bank nationalisation programme in _____.

- Ans
- 1. 2019
 - 2. 2020
 - 3. 2017
 - 4. 2015

Question ID : 65497833849
Status : Not Answered
Chosen Option : --

Q.20 What is the maximum number of electrons that can be accommodated in the 'N' shell of an atom?

- Ans
- 1. 24
 - 2. 8
 - 3. 4
 - 4. 32

Question ID : 65497833828
Status : Answered
Chosen Option : 4

Q.21 The language of administration under the Delhi Sultans was:

- Ans
- 1. Urdu
 - 2. Persian
 - 3. Turkish
 - 4. Sanskrit

Question ID : 65497833837
Status : Not Answered
Chosen Option : --

Q.22 Jallikattu is a _____ held mainly in Tamil Nadu.

- Ans
- 1. kite flying festival
 - 2. candle lighting festival
 - 3. bull taming festival
 - 4. buffalo fighting festival

Question ID : 65497833842
Status : Not Answered
Chosen Option : --

Q.23 Who among the following Australian cricketers won the Allan Border Medal 2020?

- Ans 1. Cameron Green
 2. Glenn Maxwell
 3. David Warner
 4. Pat Cummins

Question ID : 65497833845
 Status : Not Answered
 Chosen Option : --

Q.24 Which of the following movements against the British has been INCORRECTLY matched with its leader?

- Ans 1. Paika Rebellion - Bakshi Jagabandhu
 2. Pagal Panthi Revolt - Tirok Sing
 3. Kol Uprising - Buddhu Bhagat
 4. Ahom Revolt - Gomdhar Konwar

Question ID : 65497833847
 Status : Not Answered
 Chosen Option : --

Q.25 A kharif crop used both as food and fodder is:

- Ans 1. jowar
 2. bajra
 3. maize
 4. wheat

Question ID : 65497833836
 Status : Marked For Review
 Chosen Option : 1

Section : Part C Elementary Mathematics

Q.1 With a uniform speed, a car covers a distance in 6 hours. Had the speed been increased by 10 km/h, the same distance could have been covered in 5 hours. The distance covered by the car is:

- Ans 1. 300 km
 2. 200 km
 3. 250 km
 4. 350 km

Question ID : 65497833858
 Status : Answered
 Chosen Option : 1

Q.2 What is to be added to 35% of 440 so that the sum may be equal to 42% of 550?

- Ans 1. 70
 2. 75
 3. 77
 4. 65

Question ID : 65497833856
 Status : Answered
 Chosen Option : 3

Q.3 When the speed of a train is decreased by 25%, it takes 42 minutes more to cover the same distance. What is the time (in hours) taken by the train to cover the same distance with its actual speed?

Ans

✓ 1. $2\frac{1}{10}$

✗ 2. $1\frac{1}{20}$

✗ 3. $1\frac{4}{5}$

✗ 4. $2\frac{1}{5}$

Question ID : 65497833871

Status : Answered

Chosen Option : 1

Q.4 The compound interest on a certain sum for 2 years at 10% per annum is ₹651 (interest compounded yearly). The simple interest on the same sum for double the time at half the rate of interest per annum is:

Ans

✗ 1. ₹600

✗ 2. ₹630

✗ 3. ₹520

✓ 4. ₹620

Question ID : 65497833862

Status : Answered

Chosen Option : 4

Q.5 A and B undertake to do a job for ₹6,000. A can do it in 10 days and B can do it in 12 days. With the assistance of C, they finish the work in 4 days. How much should C be paid for his work?

Ans

✗ 1. ₹2,400

✗ 2. ₹1,500

✗ 3. ₹1,400

✓ 4. ₹1,600

Question ID : 65497833857

Status : Answered

Chosen Option : 4

Q.6 A sum of money is distributed among P, Q and R in the ratio 13 : 17 : 25, respectively. If R gets ₹6,800 more than Q, then the difference between P's share and Q's share is:

Ans

✓ 1. ₹3,400

✗ 2. ₹3,200

✗ 3. ₹3,600

✗ 4. ₹4,400

Question ID : 65497833859

Status : Answered

Chosen Option : 1

Q.7 A man borrows ₹15,000 at 15% p.a. compound interest. At the end of every year, he pays ₹2,500 as part repayment. How much does he still owe after three such instalments?

- Ans**
- 1. ₹14,131.87
 - 2. ₹13,175.66
 - 3. ₹12,150
 - 4. ₹12,642.50

Question ID : 65497833873
Status : Answered
Chosen Option : 1

Q.8 When a plot is sold for ₹34,080, the owner loses 20%. At what price must that plot be sold in order to gain 20%?

- Ans**
- 1. ₹50,120
 - 2. ₹51,120
 - 3. ₹41,120
 - 4. ₹51,020

Question ID : 65497833861
Status : Answered
Chosen Option : 2

Q.9 25 and 750 are the highest common factor and the lowest common multiple of two numbers, respectively. If one of the two numbers is 75, find the other number.

- Ans**
- 1. 250
 - 2. 75
 - 3. 50
 - 4. 25

Question ID : 65497833863
Status : Answered
Chosen Option : 1

Q.10 The average of five consecutive even numbers is 36. If the next five consecutive odd numbers are included, then what is the average of all the numbers?

- Ans**
- 1. 39
 - 2. 41.25
 - 3. 40.5
 - 4. 37.75

Question ID : 65497833851
Status : Answered
Chosen Option : 3

Q.11 The average weight of 24 boys is 7 kg more than the average weight of 28 girls. If the total weight of 24 boys is 1080 kg, then the total weight of 28 girls is:

- Ans
- 1. 1074 kg
 - 2. 1064 kg
 - 3. 1054 kg
 - 4. 1046 kg

Question ID : 65497833854
 Status : Answered
 Chosen Option : 2

Q.12 If $2 \text{ of } 8 \div 3 + 3 \frac{4}{5} \div x - 4 \frac{7}{9} = 6 \frac{8}{9}$, what is the value of x ?

- Ans
- 1. $\frac{2}{3}$
 - 2. $\frac{3}{5}$
 - 3. $\frac{5}{9}$
 - 4. $\frac{6}{7}$

Question ID : 65497833865
 Status : Answered
 Chosen Option : 2

Q.13 The height of a right circular cylinder is 14 cm and its curved surface is 264 cm^2 . Its volume is:

- Ans
- 1. 396 cm^3
 - 2. 290 cm^3
 - 3. 366 cm^3
 - 4. 252 cm^3

Question ID : 65497833874
 Status : Answered
 Chosen Option : 1

Q.14 An article is marked at ₹700. If it is sold at a discount of 35%, then the selling price becomes $\frac{5}{3}$ times of its cost price. What is its cost price (in ₹)?

- Ans
- 1. 273
 - 2. 455
 - 3. 291
 - 4. 420

Question ID : 65497833868
 Status : Answered
 Chosen Option : 1

Q.15 The value of $\frac{3}{5} \div 4\frac{4}{5}$ of $\frac{5}{16} + \frac{2}{3} \div \frac{8}{15} \times 1\frac{1}{5} - \frac{1}{4} \times \frac{3}{4} \div 1\frac{1}{4}$ of $\frac{2}{5}$ is:

- Ans
- ✓ 1. $\frac{61}{40}$
 - ✗ 2. $\frac{12}{5}$
 - ✗ 3. $\frac{9}{4}$
 - ✗ 4. $\frac{21}{10}$

Question ID : 65497833870
Status : Answered
Chosen Option : 1

Q.16 Ravi borrowed ₹1,800 at 6% per annum and ₹2,800 at 7% per annum simple interest for the same duration and paid ₹2,736 in all as interest. His friend Shiv borrowed ₹2,500 at 8% per annum simple interest for the same duration. How much (in ₹) Shiv had to pay to clear off the loan?

- Ans
- ✗ 1. 3,900
 - ✗ 2. 4,500
 - ✓ 3. 4,300
 - ✗ 4. 4,000

Question ID : 65497833853
Status : Answered
Chosen Option : 3

Q.17 32 workers working for 9 hours a day can finish a work in 14 days. If each worker works for 8 hours per day, how many workers are required to finish the same work in 18 days?

- Ans
- ✗ 1. 30
 - ✗ 2. 24
 - ✗ 3. 26
 - ✓ 4. 28

Question ID : 65497833867
Status : Answered
Chosen Option : 4

Q.18 The single equivalent discount for three successive discounts of 8%, 12.5% and 20% is:

- Ans
- ✗ 1. 40.5%
 - ✓ 2. 35.6%
 - ✗ 3. 35.4%
 - ✗ 4. 36.5%

Question ID : 65497833855
Status : Answered
Chosen Option : 2

Q.19 35 litres of a mixture contain milk and water in the ratio 3 : 2. If 4 litres of this mixture be replaced by 4 litres of milk, then find the ratio of milk to the water in the new mixture.

- Ans**
- 1. 4 : 7
 - 2. 3 : 5
 - 3. 5 : 2
 - 4. 3 : 7

Question ID : 65497833872
 Status : Answered
 Chosen Option : 3

Q.20 What will be the least number of marbles with Seema, if she can arrange them in rows of 6, 10, 12 and 15 marbles each, and the number is also a perfect square?

- Ans**
- 1. 625
 - 2. 900
 - 3. 225
 - 4. 400

Question ID : 65497833850
 Status : Answered
 Chosen Option : 2

Q.21 A student got 160 marks and required 50 more marks to secure the minimum 35% marks to pass. Find the maximum marks.

- Ans**
- 1. 600
 - 2. 750
 - 3. 800
 - 4. 500

Question ID : 65497833864
 Status : Answered
 Chosen Option : 1

Q.22 ₹1,26,672 is divided between A and B in the ratio 7 : 9. The difference between the share of B and that of A (in ₹) is:

- Ans**
- 1. 18,354
 - 2. 21,317
 - 3. 15,834
 - 4. 13,485

Question ID : 65497833852
 Status : Answered
 Chosen Option : 3

Q.23 The perimeter and area of a rectangular sheet are 40 m and 72 m^2 , respectively. The length of the diagonal will be:

- Ans**
- 1. 14 m
 - 2. 12 m
 - 3. 16 m
 - 4. 10 m

Question ID : 65497833860
 Status : Answered
 Chosen Option : 3

Q.24 A sold an article to B at 20% profit. B sold it to C at 12% loss and C sold it to D at 25% profit. If B had a loss of ₹72, then D would have bought the article for:

- Ans
- 1. ₹660
 - 2. ₹396
 - 3. ₹594
 - 4. ₹528

Question ID : 65497833869
 Status : Answered
 Chosen Option : 1

Q.25 A man bought some eggs at ₹60 per dozen and bought another lot of the same number of eggs at ₹50 per dozen. If he gained ₹930 after selling all these eggs at ₹70 per dozen, what was the total number of eggs bought by him?

- Ans
- 1. 54 dozens
 - 2. 48 dozens
 - 3. 62 dozens
 - 4. 70 dozens

Question ID : 65497833866
 Status : Answered
 Chosen Option : 3

Section : Part D English

Q.1 Select the option that is closest in meaning to the underlined idiom/phrase in the given sentence.

Losing my job was a blessing in disguise because I got to spend more time with my family.

- Ans
- 1. task that appeared difficult at first but became easy later
 - 2. a joyful event that made everybody happy
 - 3. event that seemed bad at first but resulted in something good later
 - 4. a good thing that happened only once

Question ID : 65497833886
 Status : Answered
 Chosen Option : 3

Q.2 Select the most appropriate meaning of the given idiom.

To lose one's head

- Ans
- 1. To be happy
 - 2. To take responsibility
 - 3. To become upset or angry
 - 4. To be robbed

Question ID : 65497833883
 Status : Answered
 Chosen Option : 3

Q.3 The following sentence has been split into four segments. Identify the segment that contains a grammatical error.

Mr. Ghosh is senior / than Mr. Sen, / so he must be / promoted first.

- Ans
- 1. Mr. Ghosh is senior
 - 2. so he must be
 - 3. than Mr. Sen
 - 4. promoted first

Question ID : 65497833877
Status : Answered
Chosen Option : 3

Q.4 Select the most appropriate synonym of the given word.

Brutal

- Ans
- 1. Considerate
 - 2. Cheerful
 - 3. Cruel
 - 4. Courteous

Question ID : 65497833878
Status : Answered
Chosen Option : 3

Q.5 Select the most appropriate option that can substitute the underlined segment in the given sentence. If there is no need to substitute it, select 'No substitution required'.

Trees can live in an extremely long time – tens, hundreds, even thousands of years.

- Ans
- 1. can live with an extremely long time
 - 2. can live for an extremely long time
 - 3. can live in an extremely longest time
 - 4. No substitution required

Question ID : 65497833884
Status : Answered
Chosen Option : 2

Q.6 Select the option that can be used as a one-word substitute for the given group of words.

A dummy used to display clothes in a shop window

- Ans
- 1. Mannequin
 - 2. Supermodel
 - 3. Statue
 - 4. Model

Question ID : 65497833894
Status : Answered
Chosen Option : 1

Q.7 Select the most appropriate synonym of the given word.

Perforate

- Ans 1. Pierce
 2. Fold
 3. Tear
 4. Crack

Question ID : 65497833893
Status : Answered
Chosen Option : 3

Q.8 Select the correctly spelt word.

- Ans 1. Schemes
 2. Malnourised
 3. Recognisable
 4. Intigrated

Question ID : 65497833879
Status : Answered
Chosen Option : 1

Q.9 Select the most appropriate option to fill in the blank.

It is important to _____ with the police and listen to their advice.

- Ans 1. cope
 2. combine
 3. concern
 4. cooperate

Question ID : 65497833887
Status : Answered
Chosen Option : 4

Q.10 Select the most appropriate option to fill in the blank.

Nobody seems to be _____ in visiting museums.

- Ans 1. attracted
 2. anxious
 3. obsessed
 4. interested

Question ID : 65497833882
Status : Answered
Chosen Option : 4

Q.11 Select the most appropriate option that can substitute the underlined segment in the given sentence. If there is no need to substitute it, select 'No substitution required'.

He will not get admission in a good college unless he will work hard.

- Ans
- 1. would work
 - 2. No substitution required
 - 3. works
 - 4. is working

Question ID : 65497833875
Status : Answered
Chosen Option : 3

Q.12 Select the option that can be used as a one-word substitute for the given group of words.

Able to be eaten

- Ans
- 1. Decibel
 - 2. Scribble
 - 3. Hobble
 - 4. Edible

Question ID : 65497833876
Status : Answered
Chosen Option : 4

Q.13 Select the most appropriate option to fill in the blank.

The _____ of directors gave their approval for the project.

- Ans
- 1. team
 - 2. board
 - 3. bunch
 - 4. band

Question ID : 65497833880
Status : Answered
Chosen Option : 2

Q.14 Select the most appropriate ANTONYM of the given word.

Remorse

- Ans
- 1. Indifference
 - 2. Guilt
 - 3. Anger
 - 4. Denial

Question ID : 65497833889
Status : Answered
Chosen Option : 2

Q.15 The following sentence has been split into four segments. Identify the segment that contains a grammatical error.

Emma agreed / thinking of an excuse / to get Paul / out of the house.

Ans 1. thinking of an excuse

2. Emma agreed

3. to get Paul

4. out of the house

Question ID : 65497833892

Status : Answered

Chosen Option : 1

Q.16 The following sentence has been split into four segments. Identify the segment that contains a grammatical error.

Why do you think / why John / refused to / marry her?

Ans 1. why John

2. marry her

3. Why do you think

4. refused to

Question ID : 65497833888

Status : Answered

Chosen Option : 1

Q.17 Select the option that can be used as a one-word substitute for the given group of words.

Owing money to someone

Ans 1. Indebted

2. Exchanged

3. Loaned

4. Donated

Question ID : 65497833890

Status : Answered

Chosen Option : 3

Q.18 Select the most appropriate option that can substitute the underlined segment in the given sentence. If there is no need to substitute it, select 'No substitution required'.

Vanilla ice cream with chocolate sauce is my favourite.

Ans 1. with chocolate sauce are

2. No substitution required

3. with chocolate sauces are

4. with chocolate sauce is being

Question ID : 65497833885

Status : Answered

Chosen Option : 2

Q.19 Select the INCORRECTLY spelt word.

- Ans 1. Omission
 2. Remission
 3. Comission
 4. Submission

Question ID : 65497833891
 Status : Answered
 Chosen Option : 3

Q.20 Select the most appropriate ANTONYM of the given word.

United

- Ans 1. Bonded
 2. Linked
 3. Separated
 4. Together

Question ID : 65497833881
 Status : Answered
 Chosen Option : 3

Comprehension:

In the following passage, some words have been deleted. Read the passage carefully and select the most appropriate option to fill in each blank.

When the temperature (1)_____ during the summer season, many people choose to use air-conditioners to keep their homes and offices cool. Air-conditioners, which were once regarded as a luxury, have now almost become a/an (2)_____. The air-conditioning system not only cools the indoor air down but also filters out harmful pollutants. This helps reduce dust, pollen and allergens inside the home and (3)_____ the quality of air inside the house or room. However, along with the (4)_____, there are some disadvantages. A major disadvantage is that if the filter inside the air-conditioner is not cleaned and maintained regularly, it (5)_____ to problems such as allergic colds, fever, headaches and dryness of the skin.

SubQuestion No : 21

Q.21 Select the most appropriate option to fill in blank no. 1.

- Ans 1. raises
 2. gains
 3. rises
 4. extends

Question ID : 65497833896
 Status : Answered
 Chosen Option : 3

Comprehension:

In the following passage, some words have been deleted. Read the passage carefully and select the most appropriate option to fill in each blank.

When the temperature (1)_____ during the summer season, many people choose to use air-conditioners to keep their homes and offices cool. Air-conditioners, which were once regarded as a luxury, have now almost become a/an (2)_____. The air-conditioning system not only cools the indoor air down but also filters out harmful pollutants. This helps reduce dust, pollen and allergens inside the home and (3)_____ the quality of air inside the house or room. However, along with the (4)_____, there are some disadvantages. A major disadvantage is that if the filter inside the air-conditioner is not cleaned and maintained regularly, it (5)_____ to problems such as allergic colds, fever, headaches and dryness of the skin.

SubQuestion No : 22

Q.22 Select the most appropriate option to fill in blank no. 2.

Ans 1. necessity

2. demand

3. urgency

4. essence

Question ID : 65497833897

Status : Answered

Chosen Option : 1

Comprehension:

In the following passage, some words have been deleted. Read the passage carefully and select the most appropriate option to fill in each blank.

When the temperature (1)_____ during the summer season, many people choose to use air-conditioners to keep their homes and offices cool. Air-conditioners, which were once regarded as a luxury, have now almost become a/an (2)_____. The air-conditioning system not only cools the indoor air down but also filters out harmful pollutants. This helps reduce dust, pollen and allergens inside the home and (3)_____ the quality of air inside the house or room. However, along with the (4)_____, there are some disadvantages. A major disadvantage is that if the filter inside the air-conditioner is not cleaned and maintained regularly, it (5)_____ to problems such as allergic colds, fever, headaches and dryness of the skin.

SubQuestion No : 23

Q.23 Select the most appropriate option to fill in blank no. 3.

Ans 1. improve

2. develops

3. alters

4. reforms

Question ID : 65497833898

Status : Answered

Chosen Option : 1

Comprehension:

In the following passage, some words have been deleted. Read the passage carefully and select the most appropriate option to fill in each blank.

When the temperature (1)_____ during the summer season, many people choose to use air-conditioners to keep their homes and offices cool. Air-conditioners, which were once regarded as a luxury, have now almost become a/an (2)_____. The air-conditioning system not only cools the indoor air down but also filters out harmful pollutants. This helps reduce dust, pollen and allergens inside the home and (3)_____ the quality of air inside the house or room. However, along with the (4)_____, there are some disadvantages. A major disadvantage is that if the filter inside the air-conditioner is not cleaned and maintained regularly, it (5)_____ to problems such as allergic colds, fever, headaches and dryness of the skin.

SubQuestion No : 24

Q.24 Select the most appropriate option to fill in blank no. 4.

- Ans 1. benefits
 2. credits
 3. virtue
 4. merit

Question ID : 65497833899

Status : Answered

Chosen Option : 1

Comprehension:

In the following passage, some words have been deleted. Read the passage carefully and select the most appropriate option to fill in each blank.

When the temperature (1)_____ during the summer season, many people choose to use air-conditioners to keep their homes and offices cool. Air-conditioners, which were once regarded as a luxury, have now almost become a/an (2)_____. The air-conditioning system not only cools the indoor air down but also filters out harmful pollutants. This helps reduce dust, pollen and allergens inside the home and (3)_____ the quality of air inside the house or room. However, along with the (4)_____, there are some disadvantages. A major disadvantage is that if the filter inside the air-conditioner is not cleaned and maintained regularly, it (5)_____ to problems such as allergic colds, fever, headaches and dryness of the skin.

SubQuestion No : 25

Q.25 Select the most appropriate option to fill in blank no. 5.

- Ans 1. could lead
 2. led
 3. leads
 4. is leading

Question ID : 65497833900

Status : Answered

Chosen Option : 3

Section : Part D Hindi

Q.1 'मृगांक' किसका पर्यायवाची है?

- Ans 1. कमल
 2. चन्द्र
 3. नयन
 4. सूय

Question ID : 65497833917

Status : Not Answered

Chosen Option : --

Q.2 दिए गए वाक्य का वह भाग ज्ञात करें जिसमें कोई त्रुटि है। यदि कोई त्रुटि नहीं है, तो 'कोई त्रुटि नहीं है' चुनें।

हमारे यहाँ(1)/ तरुण नवयुवकों की(2)/ शिक्षा का अच्छा प्रबंध है।(3)/ कोई त्रुटि नहीं है।(4)

Ans 1. 2

2. 3

3. 4

4. 1

Question ID : 65497833911

Status : Not Answered

Chosen Option : --

Q.3 सही वर्तनी वाले शब्द का चयन करें।

Ans 1. पारीतोषिक

2. पारितोषिक

3. परीतोषिक

4. परितोषिक

Question ID : 65497833904

Status : Not Answered

Chosen Option : --

Q.4 दिए गए विकल्पों में से निम्नलिखित वाक्यांश के लिए एक शब्द का चयन कीजिए-

जिसके हृदय में ममता नहीं है

Ans 1. निर्मूल

2. निर्भय

3. निर्मम

4. निर्दय

Question ID : 65497833913

Status : Not Answered

Chosen Option : --

Q.5 दिए गए वाक्य में रेखांकित खंड को प्रतिस्थापित करने के लिए सर्वाधिक उपयुक्त विकल्प का चयन करें। यदि इसे प्रतिस्थापित करने की आवश्यकता नहीं है, तो विकल्प 'किसी बदलाव की आवश्यकता नहीं है' का चयन करें।

मैंने सुई, कंघी, दर्पण और पुस्तकें मोल लिए।

Ans 1. किसी बदलाव की आवश्यकता नहीं है।

2. मोल लीं।

3. मोल दी।

4. मोल किए।

Question ID : 65497833910

Status : Not Answered

Chosen Option : --

Q.6 दिए गए वाक्य के किस भाग में त्रुटि है?

छात्राओं ने रंगारंग कार्यक्रम में भाग लिया।

- Ans
- 1. रंगारंग
 - 2. छात्राओं ने
 - 3. भाग लिया।
 - 4. कार्यक्रम म

Question ID : 65497833916
Status : Not Answered
Chosen Option : --

Q.7 सही बर्तनी वाले शब्द का चयन करें।

- Ans
- 1. गाम्भीय
 - 2. गर्भीय
 - 3. गंभीय
 - 4. गांभीय

Question ID : 65497833903
Status : Not Answered
Chosen Option : --

Q.8 रिक्त स्थान की पूर्ति करने के लिए सर्वाधिक उपयुक्त शब्द का चयन करें।

आज का युवा अपने अधिकारों के प्रति अत्यंत _____ है।

- Ans
- 1. सहज
 - 2. सजग
 - 3. अनभिज्ञ
 - 4. बेखबर

Question ID : 65497833909
Status : Not Answered
Chosen Option : --

Q.9 दिए गए वाक्य में रेखांकित खंड को प्रतिस्थापित करने के लिए सर्वाधिक उपयुक्त विकल्प का चयन करें। यदि इसे प्रतिस्थापित करने की आवश्यकता नहीं है, तो विकल्प 'किसी बदलाव की आवश्यकता नहीं है' का चयन करें।

अपराधी छूट जाते हैं, निरपराध को सजा मिलता है।

- Ans
- 1. निरपराध का सजा मिलता है।
 - 2. किसी बदलाव की आवश्यकता नहीं है।
 - 3. निरपराध को सजा मिलती है।
 - 4. निरपराध को सजा मिलती है।

Question ID : 65497833905
Status : Not Answered
Chosen Option : --

Q.10 छप्पर फाड़ कर देना मुहावरे का उचित अर्थ स्पष्ट कीजिए-

- Ans
- 1. विवाह करना
 - 2. अप्रत्याक्षित हानि होना।
 - 3. बिना प्रयत्न प्राप्त होना
 - 4. जवाब नहीं देना

Question ID : 65497833919
Status : Not Answered
Chosen Option : --

Q.11 'आँखें नीची होना' मुहावरे का सही अर्थ है-

- Ans
- 1. क्रोधित होना
 - 2. लज्जित होना
 - 3. परेशान होना
 - 4. चिंतित होना

Question ID : 65497833915
Status : Not Answered
Chosen Option : --

Q.12 दिए गए वाक्य में रेखांकित खंड को प्रतिस्थापित करने के लिए सर्वाधिक उपयुक्त विकल्प का चयन करें। यदि इस प्रतिस्थापित करने की आवश्यकता नहीं है, तो विकल्प 'किसी बदलाव की आवश्यकता नहीं है' का चयन करें।

कुछ बच्चे मैदान में क्रिकेट खेल रहे थे तो मेरे लड़का ने भी उनके साथ खेलने की जिद की।

- Ans
- 1. तो मेरे बेटे ने भी उनके साथ
 - 2. किसी बदलाव की आवश्यकता नहीं है।
 - 3. तो मेरा बच्चा ने भी उनके साथ
 - 4. तो मेरा लड़का ने भी उनके साथ

Question ID : 65497833906
Status : Not Answered
Chosen Option : --

Q.13 रिक्त स्थान की पूर्ति करने के लिए सर्वाधिक उपयुक्त शब्द का चयन करें।

श्रीकृष्ण के मामा कंस एक _____ राजा थे।

- Ans
- 1. धार्मिक
 - 2. विनयी
 - 3. देशप्रेमी
 - 4. अत्याचारी

Question ID : 65497833901
Status : Not Answered
Chosen Option : --

Q.14 दिए गए शब्द के समानार्थी शब्द का चयन करें।

जलज

- Ans 1. सलिल
 2. राजीव
 3. जरायु
 4. जलधि

Question ID : 65497833908
 Status : Not Answered
 Chosen Option : --

Q.15 रिक्त स्थान की पूर्ति करने के लिए सर्वाधिक उपयुक्त शब्द का चयन करें।

पुलिस सारी घटना की _____ कर रही है।

- Ans 1. माप
 2. जाँच
 3. परीक्षा
 4. टीका

Question ID : 65497833920
 Status : Not Answered
 Chosen Option : --

Q.16 दिए गए शब्द का विलोम चुनें-

प्रचुर

- Ans 1. अप्रचुर
 2. प्रचलित
 3. प्रचारित
 4. अप्रचारित

Question ID : 65497833912
 Status : Not Answered
 Chosen Option : --

Q.17 दिए गए विकल्पों में से निम्नलिखित वाक्यांश के लिए एक शब्द का चयन कीजिए-

अपने देश के साथ विश्वासघात करने वाला

- Ans 1. देशप्रेमी
 2. देशद्रोही
 3. दुर्भिक्ष
 4. विश्वासघाती

Question ID : 65497833914
 Status : Not Answered
 Chosen Option : --

Q.18 बहु संख्यक रेखांकित शब्द का सही विलोम बताइए-

- Ans
- 1. अल्पतज्ञ
 - 2. असीम
 - 3. अल्पसंख्यक
 - 4. अल्प

Question ID : 65497833918
Status : Not Answered
Chosen Option : --

Q.19 दिए गए वाक्यांश के लिए एक शब्द दीजिए-

जो अक्षरों को पढ़ना-लिखना जानता हो

- Ans
- 1. सर्वज्ञ
 - 2. साक्षर
 - 3. अनपढ़
 - 4. निराक्षर

Question ID : 65497833902
Status : Not Answered
Chosen Option : --

Q.20 दिए गए वाक्य का वह भाग ज्ञात करें जिसमें कोई त्रुटि है। यदि कोई त्रुटि नहीं है, तो 'कोई त्रुटि नहीं है' चुनें।

क्या आप अपनी (1)/ बात की स्पष्टीकरण करने के लिए (2)/ बिलकुल तैयार हैं? (3)/ कोई त्रुटि नहीं है (4)

- Ans
- 1. 4
 - 2. 1
 - 3. 3
 - 4. 2

Question ID : 65497833907
Status : Not Answered
Chosen Option : --

Comprehension:

दिए गए गद्यांश में से कुछ शब्द हटा दिए गए हैं। नीचे दिए विकल्पों की सहायता से रिक्त स्थानों की पूर्ति करें। प्रत्येक संख्या के लिए सर्वाधिक उपयुक्त विकल्प का चयन करें।

तुलसीदास ने 'रामचरितमानस' के द्वारा वेद-शास्त्र-सम्मत हिन्दू धर्म का (1)_____ किया। हमारी संस्कृति का (2)_____ ही वेद, शास्त्र, स्मृति आदि ग्रंथ हैं। तुलसीदास ने उस संस्कृति के आध्यात्मिक और सामाजिक पक्ष की (3)_____ की और हमारे सामने कई आदर्श प्रस्तुत किए। 'रामचरितमानस' के (4)_____ से हिन्दुओं में अपनी संस्कृति के अतीत और भविष्य पर आस्था और गर्व का (5)_____ हुआ।

SubQuestion No : 21

Q.21 गद्यांश के रिक्त स्थान (1) के लिए सर्वाधिक उपयुक्त शब्द होगा-

- Ans
- 1. प्रदान
 - 2. प्रकार
 - 3. प्रचार
 - 4. प्राचार

Question ID : 65497833922
Status : Not Answered
Chosen Option : --

Comprehension:

दिए गए गद्यांश में से कुछ शब्द हटा दिए गए हैं। नीचे दिए विकल्पों की सहायता से रिक्त स्थानों की पूर्ति करें। प्रत्येक संख्या के लिए सर्वाधिक उपयुक्त विकल्प का चयन करें।

तुलसीदास ने 'रामचरितमानस' के द्वारा वेद-शास्त्र-सम्मत हिन्दू धर्म का (1)_____ किया। हमारी संस्कृति का (2)_____ ही वेद, शास्त्र, स्मृति आदि ग्रंथ हैं। तुलसीदास ने उस संस्कृति के आध्यात्मिक और सामाजिक पक्ष की (3)_____ की और हमारे सामने कई आदर्श प्रस्तुत किए। 'रामचरितमानस' के (4)_____ से हिन्दुओं में अपनी संस्कृति के अतीत और भविष्य पर आस्था और गर्व का (5)_____ हुआ।

SubQuestion No : 22

Q.22 गद्यांश के रिक्त स्थान (2) के लिए सर्वाधिक उपयुक्त शब्द होगा-

- Ans 1. आभार
 2. आधार
 3. उद्धार
 4. अधार

Question ID : 65497833923
 Status : Not Answered
 Chosen Option : --

Comprehension:

दिए गए गद्यांश में से कुछ शब्द हटा दिए गए हैं। नीचे दिए विकल्पों की सहायता से रिक्त स्थानों की पूर्ति करें। प्रत्येक संख्या के लिए सर्वाधिक उपयुक्त विकल्प का चयन करें।

तुलसीदास ने 'रामचरितमानस' के द्वारा वेद-शास्त्र-सम्मत हिन्दू धर्म का (1)_____ किया। हमारी संस्कृति का (2)_____ ही वेद, शास्त्र, स्मृति आदि ग्रंथ हैं। तुलसीदास ने उस संस्कृति के आध्यात्मिक और सामाजिक पक्ष की (3)_____ की और हमारे सामने कई आदर्श प्रस्तुत किए। 'रामचरितमानस' के (4)_____ से हिन्दुओं में अपनी संस्कृति के अतीत और भविष्य पर आस्था और गर्व का (5)_____ हुआ।

SubQuestion No : 23

Q.23 गद्यांश के रिक्त स्थान (3) के लिए सर्वाधिक उपयुक्त शब्द होगा-

- Ans 1. रखा
 2. महता
 3. गुणगान
 4. रक्षा

Question ID : 65497833924
 Status : Not Answered
 Chosen Option : --

Comprehension:

दिए गए गद्यांश में से कुछ शब्द हटा दिए गए हैं। नीचे दिए विकल्पों की सहायता से रिक्त स्थानों की पूर्ति करें। प्रत्येक संख्या के लिए सर्वाधिक उपयुक्त विकल्प का चयन करें।

तुलसीदास ने 'रामचरितमानस' के द्वारा वेद-शास्त्र-सम्मत हिन्दू धर्म का (1)_____ किया। हमारी संस्कृति का (2)_____ ही वेद, शास्त्र, स्मृति आदि ग्रंथ हैं। तुलसीदास ने उस संस्कृति के आध्यात्मिक और सामाजिक पक्ष की (3)_____ की और हमारे सामने कई आदर्श प्रस्तुत किए। 'रामचरितमानस' के (4)_____ से हिन्दुओं में अपनी संस्कृति के अतीत और भविष्य पर आस्था और गर्व का (5)_____ हुआ।

SubQuestion No : 24

Q.24 गद्यांश के रिक्त स्थान (4) के लिए सर्वाधिक उपयुक्त शब्द होगा-

- Ans 1. मनन-गुनन
 2. लिखन-मनन
 3. पठन-पाठन
 4. लिखन-पाठन

Question ID : 65497833925
 Status : Not Answered
 Chosen Option : --

Comprehension:

दिए गए गद्यांश में से कुछ शब्द हटा दिए गए हैं। नीचे दिए विकल्पों की सहायता से रिक्त स्थानों की पूर्ति करें। प्रत्येक संख्या के लिए सर्वाधिक उपयुक्त विकल्प का चयन करें।

तुलसीदास ने 'रामचरितमानस' के द्वारा वेद-शास्त्र-सम्मत हिन्दू धर्म का (1)_____ किया। हमारी संस्कृति का (2)_____ ही वेद, शास्त्र, स्मृति आदि ग्रंथ हैं। तुलसीदास ने उस संस्कृति के आध्यात्मिक और सामाजिक पक्ष की (3)_____ की और हमारे सामने कई आदर्श प्रस्तुत किए। 'रामचरितमानस' के (4)_____ से हिन्दुओं में अपनी संस्कृति के अतीत और भविष्य पर आस्था और गर्व का (5)_____ हुआ।

SubQuestion No : 25

Q.25 गद्यांश के रिक्त स्थान (5) के लिए सर्वाधिक उपयुक्त शब्द होगा-

- Ans
- 1. विचार
 - 2. संसार
 - 3. संचार
 - 4. प्रचार

Question ID : 65497833926

Status : Not Answered

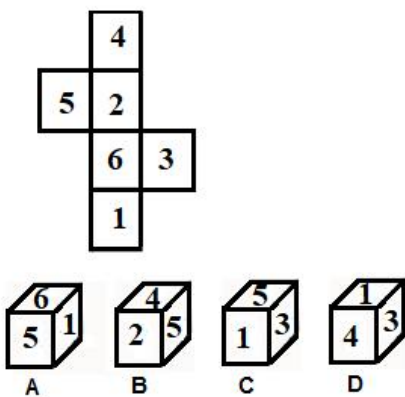
Chosen Option : --

KD Job Updates

Exam Date	26/11/2021
Exam Time :	4:00 PM - 5:30 PM
Subject	Constable GD 2021

Section : Part A General Intelligence and Reasoning

Q.1 Select the dice that can be formed by folding the given sheet along the lines.



- Ans
- 1. Only A and C
 - 2. Only A, C and D
 - 3. Only A
 - 4. Only A and D

Question ID : 65497828605
 Status : Answered
 Chosen Option : 4

Q.2 In a certain code language, 'INSPIRE' is written as 'JPTTJZF'. How will 'FORGIVE' be written in that language?

- Ans
- 1. GQTKJEF
 - 2. GQRKIDF
 - 3. GQSKJDF
 - 4. GQSLIDF

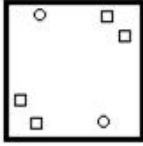
Question ID : 65497828616
 Status : Answered
 Chosen Option : 3

Q.3 The sequence of folding a piece of paper and the manner in which the folded paper has been cut is shown in the following figures. How would this paper look when unfolded?

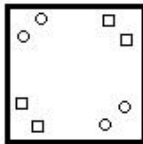


Ans

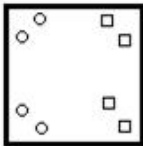
✗ 1.



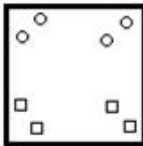
✓ 2.



✗ 3.



✗ 4.



Question ID : 65497828597
 Status : Answered
 Chosen Option : 2

Q.4 Select the number from among the given options that can replace the question mark (?) in the following series.

21, 32, 54, ?, 131

Ans ✗ 1. 72

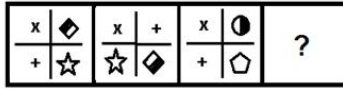
✗ 2. 95

✗ 3. 66

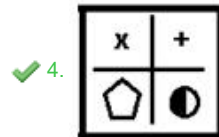
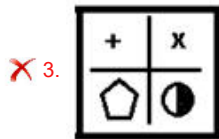
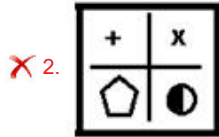
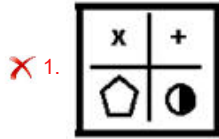
✓ 4. 87

Question ID : 65497828613
 Status : Answered
 Chosen Option : 4

Q.5 Select the figure from among the given options that can replace the question mark (?) in the following series.



Ans



Question ID : 65497828614

Status : Answered

Chosen Option : 4

Q.6 Select the option that is related to the third word in the same way as the second word is related to the first word.

Speed : Speedometer :: Air pressure : ?

- Ans
- ✗ 1. Variometer
 - ✗ 2. Altimeter
 - ✗ 3. Hypsometer
 - ✓ 4. Barometer

Question ID : 65497828608

Status : Answered

Chosen Option : 4

Q.7 Six friends, P, Q, R, S, T and U are sitting in two rows, three in each. S is not at the end of any row. T is a neighbour of R. R and U are sitting diagonally opposite to each other. P is second to the left of U. Who among the following three friends are in the same row?

- Ans
- ✗ 1. TQU and PRS
 - ✓ 2. PSU and RTQ
 - ✗ 3. STU and PRQ
 - ✗ 4. PTQ and RSU

Question ID : 65497828609

Status : Answered

Chosen Option : 2

Q.8 Select the letter-cluster from among the given options that can replace the question mark (?) in the following series.

KMQW, HJNT, CEIO, ?

- Ans
- 1. FINT
 - 2. ACGM
 - 3. OQSY
 - 4. IMST

Question ID : 65497828607
 Status : Answered
 Chosen Option : 2

Q.9 Arunima told Sahil, "Your brother-in-law's only sister's son is my grandson." How is Sahil related to Arunima?

- Ans
- 1. Son-in-law
 - 2. Uncle
 - 3. Son
 - 4. Father-in-law

Question ID : 65497828617
 Status : Answered
 Chosen Option : 3

Q.10 Select the Venn diagram that best represents the relationship between the following classes.

Grain, Beetroot, Kiwi

- Ans
- 1.
 - 2.
 - 3.
 - 4.

Question ID : 65497828610
 Status : Answered
 Chosen Option : 3

Q.11 In a certain code language, 'RAT' is coded as '39' and 'BEAR' is coded as '26'. How will 'SNAKE' be coded in that language?

- Ans
- 1. 50
 - 2. 54
 - 3. 52
 - 4. 48

Question ID : 65497828599
 Status : Answered
 Chosen Option : 1

Q.12 Select the option in which the numbers are related in the same way as are the numbers in the given set.

(7, 308, 11)

- Ans 1. (16, 239, 6)
 2. (12, 324, 9)
 3. (9, 160, 8)
 4. (8, 164, 5)

Question ID : 65497828595
 Status : Answered
 Chosen Option : 2

Q.13 Select the option that is related to the third number in the same way as the second number is related to the first number.

8 : 104 :: 16 : ?

- Ans 1. 300
 2. 335
 3. 336
 4. 320

Question ID : 65497828603
 Status : Not Answered
 Chosen Option : --

Q.14 Select the option that is related to the third letter-cluster in the same way as the second letter-cluster is related to the first letter-cluster.

HKN : KOS :: MPS : ?

- Ans 1. TPX
 2. PTW
 3. TPW
 4. PTX

Question ID : 65497828615
 Status : Answered
 Chosen Option : 4

Q.15 In a certain code language, 'HORNS' is written as 'SRONH' and 'CRUDE' is written as 'UREDC'. How will 'FACTOR' be written in that language?

- Ans 1. TSOCAE
 2. TROFCA
 3. ACFOTR
 4. TROACF

Question ID : 65497828593
 Status : Answered
 Chosen Option : 4

Q.16 In an organisation consisting of 214 employees, 120 have participated in Clay Modelling and 130 have participated in Poster Making, 36 employees have participated in both Clay Modelling and Poster Making. If each employee has participated in at least one of the two activities, how many employees participated in Poster Making only?

- Ans
- 1. 80
 - 2. 90
 - 3. 84
 - 4. 94

Question ID : 65497828596
 Status : Answered
 Chosen Option : 4

Q.17 Select the number from among the given options that can replace the question mark (?) in the following series.

31, 37, 41, 43, ?

- Ans
- 1. 51
 - 2. 47
 - 3. 45
 - 4. 49

Question ID : 65497828600
 Status : Answered
 Chosen Option : 4

Q.18 Select the correct option that indicates the arrangement of the given words in the order in which they appear in an English dictionary.

1. Program
2. Problem
3. Proposal
4. Profound
5. Property

- Ans
- 1. 2, 1, 4, 5, 3
 - 2. 2, 4, 1, 5, 3
 - 3. 4, 2, 1, 3, 5
 - 4. 3, 2, 4, 5, 1

Question ID : 65497828611
 Status : Answered
 Chosen Option : 2

Q.19 Four letter-clusters have been given, out of which three are alike in some manner and one is different. Select the letter-cluster that is different.

- Ans
- 1. HQY
 - 2. HQZ
 - 3. BKT
 - 4. DMV

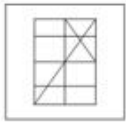
Question ID : 65497828598
 Status : Answered
 Chosen Option : 1

Q.20 Select the option in which the given figure is embedded (rotation is NOT allowed).



Ans

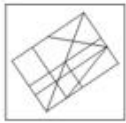
1.




2.



3.



4.



Question ID : 65497828606

Status : Answered

Chosen Option : 2

Q.21 If 'A' denotes 'addition', 'B' denotes 'multiplication', 'C' denotes 'subtraction', and 'D' denotes 'division', then what will be the value of the following expression?

90 D (2 B 5) A 4 B (12 A 10) C 4 B (17 C 10)

Ans 1. 67

2. 61

3. 65

4. 69

Question ID : 65497828604

Status : Answered

Chosen Option : 4

Q.22 Five friends, A, B, C, D and E, are sitting in a straight line. A and B are adjacent to each other. B is between A and C. A is 3rd from the left of D. D is 2nd from the right. Who is sitting 3rd from the left?

Ans 1. D

2. A

3. C

4. E

Question ID : 65497828602

Status : Answered

Chosen Option : 3

Q.23 Read the given statements and conclusions carefully. Assuming that the information given in the statements is true, even if it appears to be at variance with commonly known facts, decide which of the given conclusions logically follow(s) from the statements.

Statements:

1. No girl is a musician.
2. No musician is a teacher.
3. All stars are musicians.

Conclusions:

- I. No star is a girl.
- II. No star is a teacher.

- Ans** 1. Both the conclusions follow
 2. Only conclusion II follows
 3. Only conclusion I follows
 4. None of the conclusions follow

Question ID : 65497828594

Status : Answered

Chosen Option : 1

Q.24 Select the combination of letters that when sequentially placed in the blanks of the given series will complete the series.

Z _ _ U M _ A F _ M _ A _ _ M

- Ans** 1. FDPZMUF
 2. AFZUFU
 3. DZFUMZA
 4. UADZMFZ

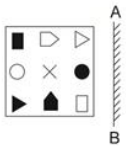
Question ID : 65497828612

Status : Answered

Chosen Option : 2


KD Job Updates

Q.25 Select the correct mirror image of the given figure when the mirror is placed at 'AB' as shown.




Ans

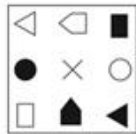
1.



2.



3.



4.



Question ID : 65497828601
 Status : Answered
 Chosen Option : 3

Section : Part B General Knowledge and General Awareness

Q.1 Curd and vinegar taste sour because they contain _____.

- Ans 1. chemicals
 2. acids
 3. proteins
 4. yeast

Question ID : 65497828633
 Status : Answered
 Chosen Option : 2

Q.2 Who among the following is credited with being the 'Pioneer of Rocket Technology' in India?

- Ans 1. Lord Cornwallis
 2. Babar
 3. Akbar II
 4. Tipu Sultan

Question ID : 65497828638
 Status : Answered
 Chosen Option : 1

Q.3 Which of the following is the largest west flowing river in Peninsular India?

- Ans
- 1. Krishna
 - 2. Kaveri
 - 3. Narmada
 - 4. Godavari

Question ID : 65497828618
 Status : Not Answered
 Chosen Option : --

Q.4 Who inaugurated 'Destination North East 2020', to showcase the region's culture, tourism and heritage?

- Ans
- 1. Union Minister for Tourism and Culture, Prahlad Singh Patel
 - 2. Union Minister for Tourism, Dr Jitendra Singh
 - 3. The Prime Minister, Narendra Modi
 - 4. Union Home Minister, Amit Shah

Question ID : 65497828635
 Status : Not Answered
 Chosen Option : --

Q.5 Chhath Puja, the famous traditional festival of India is dedicated to which of the following Gods?

- Ans
- 1. Moon
 - 2. Lord Brahma
 - 3. Sun
 - 4. Lord Shiva

Question ID : 65497828621
 Status : Answered
 Chosen Option : 3

Q.6 Who among the following won the Nitto Men's ATP Tour Finals in 2020?

- Ans
- 1. Dominic Thiem
 - 2. Novak Djokovic
 - 3. Daniil Medvedev
 - 4. Andrey Rublev

Question ID : 65497828626
 Status : Not Answered
 Chosen Option : --

Q.7 Which Amendment enabled 27% reservation for OBC in government and private educational institutes in 2006?

- Ans
- 1. 93rd
 - 2. 77th
 - 3. 86th
 - 4. 92nd

Question ID : 65497828631
 Status : Answered
 Chosen Option : 4

Q.8 In which state was the Forest Martyrs' Memorial inaugurated in November 2020?

- Ans
- 1. Karnataka
 - 2. Tamil Nadu
 - 3. Maharashtra
 - 4. Andhra Pradesh

Question ID : 65497828642
Status : Not Answered
Chosen Option : --

Q.9 Who among the following Indian actors has been appointed as the state icon of Punjab by the Election Commission of India?

- Ans
- 1. Amitabh Bachchan
 - 2. Sonu Sood
 - 3. Salman Khan
 - 4. Akshay Kumar

Question ID : 65497828624
Status : Answered
Chosen Option : 2

Q.10 Which of the following states has the highest life expectancy at birth?

- Ans
- 1. Kerala
 - 2. Goa
 - 3. Haryana
 - 4. Tamil Nadu

Question ID : 65497828619
Status : Answered
Chosen Option : 1

Q.11 When was the All India Tennis Association (AITA) established in India?

- Ans
- 1. 1912
 - 2. 1934
 - 3. 1956
 - 4. 1920

Question ID : 65497828625
Status : Answered
Chosen Option : 2

Q.12 Who is the author of the book 'Lessons Life Taught Me, Unknowingly'?

- Ans
- 1. Shilpa Shetty
 - 2. Anupam Kher
 - 3. Twinkle Khanna
 - 4. Javed Akhtar

Question ID : 65497828630
Status : Answered
Chosen Option : 2

Q.13 GDP can be expressed in two different ways, nominal GDP and _____.

- Ans
- 1. domestic GDP
 - 2. real GDP
 - 3. symbolic GDP
 - 4. calculated GDP

Question ID : 65497828636

Status : Answered

Chosen Option : 2

Q.14 _____, built by the Mughal Emperor Shah Jahan in the 17th century, was the main residence of the Mughal Emperors for nearly 200 years.

- Ans
- 1. Tughlaqabad Fort, Delhi
 - 2. Siri Fort, Delhi
 - 3. Red Fort, Delhi
 - 4. Salimgarh Fort, Delhi

Question ID : 65497828634

Status : Answered

Chosen Option : 3

Q.15 Queen Victoria's Proclamation declared that thereafter India would be governed by and in the name of the British Monarch through a Secretary of State on:

- Ans
- 1. 27 October, 1858
 - 2. 1 November, 1858
 - 3. 12 August, 1858
 - 4. 16 September, 1860

Question ID : 65497828620

Status : Answered

Chosen Option : 1

Q.16 Kabini is an important tributary of the river:

- Ans
- 1. Cauvery
 - 2. Krishna
 - 3. Mahi
 - 4. Godavari

Question ID : 65497828637

Status : Answered

Chosen Option : 3

Q.17 In which part of Article 44 of the Constitution of India is the provision for uniform civil code for the citizens contained?

- Ans
- 1. Part III
 - 2. Part VI
 - 3. Part IV
 - 4. Part II

Question ID : 65497828640

Status : Answered

Chosen Option : 3

Q.18 Who was appointed as the first Chairperson of the Reserve Bank Innovation Hub in November 2020?

- Ans 1. Senapathy (Kris) Gopalakrishnan
 2. TN Manoharan
 3. Rajiv Kumar
 4. Narayan Murthy

Question ID : 65497828622
Status : Not Answered
Chosen Option : --

Q.19 Which of the following is NOT a cold-blooded animal?

- Ans 1. Rabbit
 2. Shark
 3. Crocodile
 4. Frog

Question ID : 65497828628
Status : Answered
Chosen Option : 1

Q.20 The smallest and longest bones in the human body are _____ and _____, respectively.

- Ans 1. stapes, fibula
 2. tibia, femur
 3. stapes, femur
 4. nails, fibula

Question ID : 65497828629
Status : Answered
Chosen Option : 3

Q.21 Who among the following cricketers was the winner of 'ICC ODI Cricketer of the Year Award 2020'?

- Ans 1. Mahendra Singh Dhoni
 2. Virat Kohli
 3. Jasprit Bumrah
 4. Rohit Sharma

Question ID : 65497828641
Status : Answered
Chosen Option : 2

Q.22 Which of the following lakes of India has NOT been added to the Ramsar Sites?

- Ans 1. Chil ka Lake
 2. Keetham Lake
 3. Loktak Lake
 4. Dal Lake

Question ID : 65497828623
Status : Answered
Chosen Option : 2

Q.23 The Buddhist Vihara at Sanchi is also known as 'Great Stupa'. It is one of the most famous Buddhist monuments in India, located at Sanchi town in _____ district.

- Ans
- 1. Jabalpur
 - 2. Raisen
 - 3. Purnia
 - 4. Patna

Question ID : 65497828627
Status : Not Answered
Chosen Option : --

Q.24 Which of the following countries performed its first robotic docking in lunar orbit?

- Ans
- 1. Russia
 - 2. China
 - 3. India
 - 4. Japan

Question ID : 65497828632
Status : Not Answered
Chosen Option : --

Q.25 Which of the following books was written by Banabhatta?

- Ans
- 1. Ashtadhyayi
 - 2. Akbarnama
 - 3. Harshacharita
 - 4. Malavikagnimitram

Question ID : 65497828639
Status : Answered
Chosen Option : 3

Section : Part C Elementary Mathematics

Q.1 The average of the first five multiples of 13 is:

- Ans
- 1. 13
 - 2. 39
 - 3. 65
 - 4. 26

Question ID : 65497828651
Status : Answered
Chosen Option : 2

Q.2 The compound interest compounded annually on a sum of money for 2 years is ₹1,128.6 and the simple interest on the same sum for the same period is ₹1,080. What is the difference between the compound interest compounded annually and the simple interest for 3 years?

- Ans**
- 1. ₹165.174
 - 2. ₹170.174
 - 3. ₹150.174
 - 4. ₹160.174

Question ID : 65497828663

Status : **Not Attempted and Marked For Review**

Chosen Option : --

Q.3 Two trains of lengths 120 m and 180 m are travelling in opposite directions at the uniform speed of 34 km/h and 32 km/h. The time taken by the two trains to pass each other is:

- Ans**
- 1. 180/11 sec
 - 2. 17 sec
 - 3. 15.5 sec
 - 4. 16 sec

Question ID : 65497828659

Status : **Answered**

Chosen Option : 1

Q.4 A person purchased a machine for ₹50,000 and fixed the marked price 20% higher than the cost price and sold it at a discount of 15%. The percentage profit or loss is:

- Ans**
- 1. 1% loss
 - 2. 2.5% profit
 - 3. 4% loss
 - 4. 2% profit

Question ID : 65497828656

Status : **Answered**

Chosen Option : 4

Q.5 If $P = a^3 \times b^5 \times c^{11}$, $Q = a^8 \times b^9 \times c^5$, $R = a^{15} \times c^{23}$, then what is the HCF of P, Q and R?

- Ans**
- 1. $a^3 \times c^5$
 - 2. $a^{15} \times b^9 \times c^{23}$
 - 3. $a \times c$
 - 4. $a^{26} \times b^{14} \times c^{39}$

Question ID : 65497828643

Status : **Answered**

Chosen Option : 1

Q.6 A sum fetched a total simple interest of ₹5,427 at the rate of 9% p.a. in 6 years. What is the sum?

- Ans
- 1. ₹54,010
 - 2. ₹10,050
 - 3. ₹10,002
 - 4. ₹54,270

Question ID : 65497828653
Status : Answered
Chosen Option : 2

Q.7 A's income is 25% more than that of B. B's income is less than A's income in percentage of:

- Ans
- 1. 15%
 - 2. 20%
 - 3. 11%
 - 4. 18%

Question ID : 65497828657
Status : Answered
Chosen Option : 2

Q.8 ₹13,540 is to be divided between Kamal and Sunita such that Kamal's share at the end of 5 years may be equal to Sunita's share at the end of 7 years. If the rate of interest is 8% per annum compounded annually, then Kamal's share is:

- Ans
- 1. ₹7,280
 - 2. ₹7,290
 - 3. ₹8,240
 - 4. ₹7,390

Question ID : 65497828647
Status : Not Answered
Chosen Option : --

Q.9 The value of $\frac{1}{2}$ of $\frac{1}{3}$ of $\frac{2}{3}$ of $\frac{4}{5} + 4 \div 7 + 3$ of $7 \div 2$ is:

- Ans
- 1. $\frac{1124}{105}$
 - 2. $\frac{1024}{105}$
 - 3. $\frac{1104}{105}$
 - 4. $\frac{1224}{105}$

Question ID : 65497828660
Status : Answered
Chosen Option : 1

Q.10 The perimeter of a square is 64 cm . The area of a rectangle is 16 cm^2 less than the area of the square. If the length of the rectangle is 20 cm , what is the perimeter of the rectangle?

- Ans
- 1. 12 cm
 - 2. 15 cm
 - 3. 18 cm
 - 4. 64 cm

Question ID : 65497828664
 Status : Answered
 Chosen Option : 4

Q.11 The value of $2 \times 7 \div 14$ of $4 - 5 \div 4 \times (9 - 11) + 2 - 2 \times 6 \div 8$ of 3 , is:

- Ans
- 1. $3\frac{1}{2}$
 - 2. $4\frac{1}{4}$
 - 3. $2\frac{1}{2}$
 - 4. $4\frac{3}{4}$

Question ID : 65497828665
 Status : Not Attempted and Marked For Review
 Chosen Option : --

Q.12 What is the greatest number which leaves the same remainder in each case, when divides 265, 580 and 825?

- Ans
- 1. 35
 - 2. 55
 - 3. 25
 - 4. 45

Question ID : 65497828650
 Status : Not Attempted and Marked For Review
 Chosen Option : --

Q.13 A driver drives a car at a uniform speed of 60 km/h and reaches the 330 km destination by 30 min late. To reach on time, the % increase in speed will be:

- Ans
- 1. 15%
 - 2. 10%
 - 3. 12%
 - 4. 20%

Question ID : 65497828658
 Status : Answered
 Chosen Option : 2

Q.14 A train moves at a speed of 70 km/h for 5 hours and stops at station 'A'. From station 'A', the train moves to station 'B' at a speed of 66 km/h for 3 hours. What is the total distance covered by the train?

- Ans**
- 1. 520 km
 - 2. 548 km
 - 3. 500 km
 - 4. 480 km

Question ID : 65497828661
Status : Answered
Chosen Option : 2

Q.15 Two-third of the loss of A is equal to five-seventh of the profit of B. If the loss of A is ₹2,460, then how much (correct to 2 decimal places) percentage of the profit of B is the loss of A?

- Ans**
- 1. 107.27%
 - 2. 107.14%
 - 3. 93.67%
 - 4. 93.33%

Question ID : 65497828644
Status : Answered
Chosen Option : 4

Q.16 If $0.45 : x :: 3 : 8$, then x is equal to:

- Ans**
- 1. 1.3
 - 2. 1.2
 - 3. 1.4
 - 4. 2.2

Question ID : 65497828648
Status : Answered
Chosen Option : 2

Q.17 There are three numbers such that the first number is 3 times the second number and the second number is half of the third number. Their average is 60. The third number is:

- Ans**
- 1. 120
 - 2. 60
 - 3. 30
 - 4. 90

Question ID : 65497828655
Status : Answered
Chosen Option : 2

Q.18 A can complete $\frac{3}{8}$ of a certain work in 9 days and B can complete 80% of the same work in 16 days. Both work together for 5 days. C alone completes the remaining work in $6\frac{1}{2}$ days. A and C together will complete the whole work in:

- Ans**
- 1. 9 days
 - 2. 10 days
 - 3. 8 days
 - 4. 6 days

Question ID : 65497828667
Status : Answered
Chosen Option : 3

Q.19 A person purchased a refrigerator for ₹18,000. After two years, he spent ₹2,500 on its repair and sold it for ₹12,300. The percentage loss is:

- Ans**
- 1. 42%
 - 2. 46%
 - 3. 40%
 - 4. 44%

Question ID : 65497828654
Status : Answered
Chosen Option : 3

Q.20 A pond is 50 m long, 25 m wide and 4 m deep. Find the capacity of the pond (in m^3).

- Ans**
- 1. 4000
 - 2. 500
 - 3. 5000
 - 4. 2500

Question ID : 65497828649
Status : Answered
Chosen Option : 3

Q.21 A boy who is 7 feet tall can cast a shadow that is 21 feet long on the ground. How tall (in feet) is a man who can cast a shadow that is 15 feet long?

- Ans**
- 1. 6.5
 - 2. 5.5
 - 3. 6
 - 4. 5

Question ID : 65497828652
Status : Answered
Chosen Option : 4

Q.22 The difference between the selling prices of an article sold at a discount of $14\frac{1}{2}\%$ and $10\frac{1}{2}\%$ is 48. If the marked price is 25% more than the cost price, then the cost price of the article is:

- Ans**
- 1. ₹860
 - 2. ₹950
 - 3. ₹920
 - 4. ₹960

Question ID : 65497828645
Status : Answered
Chosen Option : 4

Q.23 By selling an article for ₹340, a trader loses 20%. To gain 15%, he must sell it for:

- Ans**
- 1. ₹488.75
 - 2. ₹475.50
 - 3. ₹455.75
 - 4. ₹517.50

Question ID : 65497828666
Status : Answered
Chosen Option : 1

Q.24 Some articles are sold in such a way that the cost price of 60% of the articles is equal to the selling price of 40% of the articles. The profit percentage is:

- Ans**
- 1. 35
 - 2. 40
 - 3. 45
 - 4. 50

Question ID : 65497828646
Status : Answered
Chosen Option : 4

Q.25 Rohith and Manoj together have ₹1,320. If $\frac{10}{21}$ of Rohith's amount equals to $\frac{5}{7}$ of Manoj's amount, how much amount does Rohith have?

- Ans**
- 1. ₹320
 - 2. ₹328
 - 3. ₹792
 - 4. ₹980

Question ID : 65497828662
Status : Not Answered
Chosen Option : --

Q.1 Select the most appropriate ANTONYM of the given word.

Monumental

- Ans 1. Mysterious
 2. Insignificant
 3. Important
 4. Enormous

Question ID : 65497828678
Status : Answered
Chosen Option : 4

Q.2 Select the option that can be used as a one-word substitute for the given group of words.

A large cage, building or enclosure for keeping birds in

- Ans 1. Aviary
 2. Apiary
 3. Asylum
 4. Aquarium

Question ID : 65497828674
Status : Answered
Chosen Option : 1

Q.3 Select the most appropriate option to fill in the blank.

The police later _____ that one of the thieves had been arrested.

- Ans 1. abandoned
 2. confirmed
 3. commenced
 4. analysed

Question ID : 65497828671
Status : Answered
Chosen Option : 2

Q.4 Select the option that can be used as a one-word substitute for the given group of words.

A system of society or government in which men hold the power and women are largely excluded from it

- Ans 1. Matriarchy
 2. Masculinity
 3. Patrilineal
 4. Patriarchy

Question ID : 65497828681
Status : Answered
Chosen Option : 4

Q.5 Select the **INCORRECTLY** spelt word.

- Ans 1. Nineteen
 2. Neutrelise
 3. Noun
 4. Nationalise

Question ID : 65497828682
Status : Answered
Chosen Option : 2

Q.6 Select the most appropriate meaning of the given idiom.

In the long run

- Ans 1. Immediately
 2. Occasionally
 3. Ultimately
 4. Regularly

Question ID : 65497828670
Status : Answered
Chosen Option : 3

Q.7 Select the most appropriate option to fill in the blank.

There are various legends associated with the _____ of the state of Kerala.

- Ans 1. source
 2. basis
 3. root
 4. origin

Question ID : 65497828676
Status : Not Answered
Chosen Option : --

Q.8 Select the most appropriate **SYNONYM** of the given word.

Lure

- Ans 1. Attack
 2. Amend
 3. Attract
 4. Arise

Question ID : 65497828686
Status : Answered
Chosen Option : 3

Q.9 Parts of the given sentence have been given as options. One of them contains a grammatical error. Select the option that has the error.

Educational institutions have been notify to open from 17th November for higher semester students who are engaged in research.

- Ans
- 1. open from
 - 2. are engaged
 - 3. have been notify
 - 4. for higher semester students

Question ID : 65497828679
Status : Answered
Chosen Option : 3

Q.10 Select the most appropriate option that can substitute the underlined segment in the given sentence. If there is no need to substitute it, select 'No substitution required'.

I started early from office, lest I should not get caught in the rain.

- Ans
- 1. lest I will not get caught
 - 2. lest that I get caught
 - 3. No substitution required'
 - 4. lest I should get caught

Question ID : 65497828684
Status : Answered
Chosen Option : 4

Q.11 Select the most appropriate option to fill in the blank.

My classmate is _____ of my achievement.

- Ans
- 1. jealous
 - 2. bitter
 - 3. zealous
 - 4. sad

Question ID : 65497828677
Status : Answered
Chosen Option : 1

Q.12 Select the most appropriate synonym of the given word.

Desert

- Ans
- 1. Help
 - 2. Support
 - 3. Abandon
 - 4. Stay

Question ID : 65497828669
Status : Answered
Chosen Option : 3

Q.13 The following sentence has been divided into parts. One of them may contain an error. Select the part that contains the error from the given options. If you don't find any error, mark 'No error' as your answer.

He want / to have / some more rice.

- Ans 1. He want
 2. No error
 3. to have
 4. some more rice

Question ID : 65497828668
 Status : Answered
 Chosen Option : 1

Q.14 Select the most appropriate option that can substitute the underlined segment in the given sentence. If there is no need to substitute it, select 'No substitution required'.

I am living in this city for several years but have never experienced any discrimination.

- Ans 1. had lived
 2. No substitution required'
 3. was lived
 4. have lived

Question ID : 65497828683
 Status : Answered
 Chosen Option : 2

Q.15 Select the most appropriate ANTONYM of the given word.

Tropical

- Ans 1. Cold
 2. Lush
 3. Equatorial
 4. Sultry

Question ID : 65497828680
 Status : Answered
 Chosen Option : 1

Q.16 Select the option that can be used as a one-word substitute for the given group of words.

Fit to be eaten

- Ans 1. Tasty
 2. Delicious
 3. Potable
 4. Edible

Question ID : 65497828687
 Status : Answered
 Chosen Option : 4

Q.17 The following sentence has been split into four segments. Identify the segment that contains a grammatical error.

He has been talking / since two hours / and is still / not tired.

- Ans
- 1. He has been ta king
 - 2. since two hours
 - 3. not tired
 - 4. and is still

Question ID : 65497828685
Status : Answered
Chosen Option : 2

Q.18 Select the most appropriate meaning of the given idiom.

Monkey business

- Ans
- 1. Dealing in the supply of monkeys
 - 2. Actions that imitate other animals
 - 3. Carrying out business related to monkeys
 - 4. Behaviour that is not acceptable or is dishonest

Question ID : 65497828673
Status : Answered
Chosen Option : 4

Q.19 Select the most appropriate option that can substitute the underlined word in the given sentence.

In India, there are not enough job employability.

- Ans
- 1. invincibility
 - 2. productivities
 - 3. profitability
 - 4. opportunities

Question ID : 65497828672
Status : Answered
Chosen Option : 4

Q.20 Select the INCORRECTLY spelt word.

- Ans
- 1. Exclaim
 - 2. Express
 - 3. Comunity
 - 4. Array

Question ID : 65497828675
Status : Answered
Chosen Option : 3

Comprehension:

In the following passage, some words have been deleted. Read the passage carefully and select the most appropriate option to fill in each blank.

The predominantly deltaic eastern coastal plain is an area of deep sedimentation. Over (1) _____ of its length it is considerably wider (2) _____ the plain on the western coast. (3) _____ major deltas, from south to north, (4) _____ of the Kaveri, the Krishna-Godavari, the Mahanadi, and the Ganges-Brahmaputra rivers. The last of (5) _____ is some 190 miles (300 km) wide, but only about one-third of it lies within India.

SubQuestion No : 21

Q.21 Select the most appropriate option to fill in blank no. 1.

- Ans 1. more
 2. many
 3. maximum
 4. most

Question ID : 65497828689
 Status : Answered
 Chosen Option : 4

Comprehension:

In the following passage, some words have been deleted. Read the passage carefully and select the most appropriate option to fill in each blank.

The predominantly deltaic eastern coastal plain is an area of deep sedimentation. Over (1) _____ of its length it is considerably wider (2) _____ the plain on the western coast. (3) _____ major deltas, from south to north, (4) _____ of the Kaveri, the Krishna-Godavari, the Mahanadi, and the Ganges-Brahmaputra rivers. The last of (5) _____ is some 190 miles (300 km) wide, but only about one-third of it lies within India.

SubQuestion No : 22

Q.22 Select the most appropriate option to fill in blank no. 2.

- Ans 1. then
 2. there
 3. than
 4. that

Question ID : 65497828690
 Status : Answered
 Chosen Option : 3

Comprehension:

In the following passage, some words have been deleted. Read the passage carefully and select the most appropriate option to fill in each blank.

The predominantly deltaic eastern coastal plain is an area of deep sedimentation. Over (1) _____ of its length it is considerably wider (2) _____ the plain on the western coast. (3) _____ major deltas, from south to north, (4) _____ of the Kaveri, the Krishna-Godavari, the Mahanadi, and the Ganges-Brahmaputra rivers. The last of (5) _____ is some 190 miles (300 km) wide, but only about one-third of it lies within India.

SubQuestion No : 23

Q.23 Select the most appropriate option to fill in blank no. 3

- Ans 1. Specific
 2. The
 3. Few
 4. Such

Question ID : 65497828691
 Status : Answered
 Chosen Option : 2

Comprehension:

In the following passage, some words have been deleted. Read the passage carefully and select the most appropriate option to fill in each blank.

The predominantly deltaic eastern coastal plain is an area of deep sedimentation. Over (1) _____ of its length it is considerably wider (2) _____ the plain on the western coast. (3) _____ major deltas, from south to north, (4) _____ of the Kaveri, the Krishna-Godavari, the Mahanadi, and the Ganges-Brahmaputra rivers. The last of (5) _____ is some 190 miles (300 km) wide, but only about one-third of it lies within India.

SubQuestion No : 24

Q.24 Select the most appropriate option to fill in blank no. 4.

- Ans** 1. are
 2. had been
 3. were
 4. have been

Question ID : **65497828692**
 Status : **Answered**
 Chosen Option : **1**

Comprehension:

In the following passage, some words have been deleted. Read the passage carefully and select the most appropriate option to fill in each blank.

The predominantly deltaic eastern coastal plain is an area of deep sedimentation. Over (1) _____ of its length it is considerably wider (2) _____ the plain on the western coast. (3) _____ major deltas, from south to north, (4) _____ of the Kaveri, the Krishna-Godavari, the Mahanadi, and the Ganges-Brahmaputra rivers. The last of (5) _____ is some 190 miles (300 km) wide, but only about one-third of it lies within India.

SubQuestion No : 25

Q.25 Select the most appropriate option to fill in blank no. 5.

- Ans** 1. this
 2. that
 3. them
 4. whom

Question ID : **65497828693**
 Status : **Answered**
 Chosen Option : **3**

Section : **Part D Hindi**

Q.1 नीचे दिए वाक्य में रिक्त-स्थान भरने के लिए सबसे उपयुक्त शब्द का चयन करें।

रात को उल्लुओं के _____ की आवाज़ें आ रही थी।

- Ans** 1. घुघुआने
 2. कूजने
 3. टरनि
 4. रेंकने

Question ID : **65497828708**
 Status : **Not Answered**
 Chosen Option : **--**

Q.2 विलोम शब्दों के सही युग्म का चयन करें:

- Ans
- 1. भय - डर
 - 2. शरीर - देह
 - 3. न कहने योग्य - अकथ
 - 4. आदि - अत

Question ID : 65497828711

Status : Not Answered

Chosen Option : --

Q.3 दिए गए वाक्य में रेखांकित खंड को प्रतिस्थापित करने के लिए सबसे उपयुक्त विकल्प का चयन करें।
यदि इसे प्रतिस्थापित करने की आवश्यकता नहीं है, तो विकल्प 'किसी बदलाव की आवश्यकता नहीं है'
का चयन करें।

वह नहीं समझेगा इसलिए वह मूर्ख है।

- Ans
- 1. इसके कारण
 - 2. क्योंकि
 - 3. अतः
 - 4. किसी बदलाव की आवश्यकता नहीं है।

Question ID : 65497828696

Status : Not Answered

Chosen Option : --

Q.4 रिक्त स्थान भरने के लिए सबसे उपयुक्त शब्द का चयन करें-

उनकी आपस में _____ हो गई।

- Ans
- 1. लबझड़
 - 2. खटपट
 - 3. फटफट
 - 4. गड़बड़

Question ID : 65497828698

Status : Not Answered

Chosen Option : --

Q.5 दिये गये वाक्य में रेखांकित अंश को प्रतिस्थापित करने के लिए सबसे उपयुक्त विकल्प का चयन करें।

इस गीत की दो चार लड़ियाँ सुना दो।

- Ans
- 1. कड़ियाँ
 - 2. झड़ियाँ
 - 3. छद
 - 4. कविता

Question ID : 65497828709

Status : Not Answered

Chosen Option : --

Q.6 दिए गए शब्द के समानार्थी शब्द का चयन करें।

सुधा

- Ans 1. द्रव्य
 2. पीयूष
 3. वारि
 4. पावन

Question ID : 65497828700
 Status : Not Answered
 Chosen Option : --

Q.7 माल-सामान की बिक्री करनेवाला

शब्द समूह के स्थान पर एक शब्द लिखिए-

- Ans 1. क्रेता
 2. ग्राहक
 3. बुभुक्षा
 4. विक्रेता

Question ID : 65497828713
 Status : Not Answered
 Chosen Option : --

Q.8 दिए गए वाक्य में रेखांकित खंड को प्रतिस्थापित करने के लिए सबसे उपयुक्त विकल्प का चयन करें।
 यदि इसे प्रतिस्थापित करने की आवश्यकता नहीं है, तो विकल्प 'किसी बदलाव की आवश्यकता नहीं है'
 का चयन करें।

थोड़ी देर बाद वे वापस लौट आये।

- Ans 1. किसी बदलाव की आवश्यकता नहीं है।
 2. वे वापसी लौट आये
 3. वे लौट आये वापस
 4. वे लौट आये

Question ID : 65497828705
 Status : Not Answered
 Chosen Option : --

Q.9 दिए गए वाक्य का वह भाग ज्ञात करें जिसमें कोई त्रुटि है। यदि कोई त्रुटि नहीं है, तो 'कोई त्रुटि नहीं है'
 चुनें।

गणतंत्र दिवस की परेड को (1)/ लाखों बालक, वृद्ध नर और नारी (2)/ देख रही थी। (3)/ कोई त्रुटि नहीं है(4)

- Ans 1. 3
 2. 4
 3. 1
 4. 2

Question ID : 65497828703
 Status : Not Answered
 Chosen Option : --

Q.10 मेरे से प्रश्न मत पूछना - रेखांकित शब्द की त्रुटि पहचानिए-

- Ans 1. क्रिया विशेष के कारण
 2. सर्वनाम के कारण
 3. विशेषण के कारण
 4. सज्ञा के कारण

Question ID : 65497828710
 Status : Not Answered
 Chosen Option : --

Q.11 बिना पलक झपकाए - वाक्यांश के लिए एक शब्द है:

- Ans 1. निर्निमेष
 2. पलक
 3. निमेष
 4. मेष

Question ID : 65497828712
 Status : Not Answered
 Chosen Option : --

Q.12 दिए गए शब्द का विलोम चुनें-

सौम्य

- Ans 1. स्तुत्य
 2. उग्र
 3. निद्य
 4. सेवित

Question ID : 65497828706
 Status : Not Answered
 Chosen Option : --

Q.13 दिए गए वाक्य का वो भाग ज्ञात करें जिसमें कोई त्रुटि है। यदि कोई त्रुटि नहीं है, तो 'कोई त्रुटि नहीं है' चुनें।

रण में सेनापति के वीरता (1)\ दिखाने का कारण राष्ट्रपति ने (2)\ उसे वीरचक्र प्रदान किया। (3)\ कोई त्रुटि नहीं है (4)

- Ans 1. 4
 2. 1
 3. 2
 4. 3

Question ID : 65497828699
 Status : Not Answered
 Chosen Option : --

Q.14 'जिसकी जड़ या आधार का पता न हो' इस वाक्यांश के लिए एक सार्थक शब्द दीजिए।

- Ans 1. निर्दय
 2. निर्मम
 3. निर्भय
 4. निर्मूल

Question ID : 65497828694
 Status : Not Answered
 Chosen Option : --

Q.15 दिए गए चार विकल्पों में से, उस विकल्प का चयन करें, जो नीचे दिए मुहावरे का अर्थ व्यक्त करता है।

भागीरथ प्रयत्न

- Ans
- 1. प्रयास न करना
 - 2. उनकी कोशिश
 - 3. थोड़ा प्रयास
 - 4. भारी कोशिश

Question ID : 65497828707
Status : Not Answered
Chosen Option : --

Q.16 सही वर्तनी वाले शब्द का चयन करें।

- Ans
- 1. शैक्षणिक
 - 2. शिक्षणिक
 - 3. शैक्षणिक
 - 4. सैक्षणिक

Question ID : 65497828702
Status : Not Answered
Chosen Option : --

Q.17 सही वर्तनी वाले शब्द का चयन करें।

- Ans
- 1. अरण्य
 - 2. अरिण्य
 - 3. अरन्य
 - 4. अरिन्य

Question ID : 65497828701
Status : Not Answered
Chosen Option : --

Q.18 रिक्त स्थान को भरने के लिए सबसे उपयुक्त शब्द का चयन कीजिए।

पृथ्वी का _____ गोल है।

- Ans
- 1. स्वरूप
 - 2. क्षमता
 - 3. रूप
 - 4. आकार

Question ID : 65497828695
Status : Not Answered
Chosen Option : --

Q.19 'कमर कसना' मुहावरे का अर्थ बताइए-

- Ans
- 1. तैयार होना
 - 2. दर्द होना
 - 3. हौसला हारना
 - 4. सहारा देना

Question ID : 65497828697
Status : Not Answered
Chosen Option : --

Q.20 दिए गए शब्द के समानार्थी शब्द का चयन करें।

अमृत

- Ans 1. अद्भुत
 2. वसुधा
 3. अलौकिक
 4. सुधा

Question ID : 65497828704

Status : Not Answered

Chosen Option : --

Comprehension:

निम्नलिखित गद्यांश को पढ़कर प्रश्नों के उचित उत्तर दीजिए-

प्राचीन काल में नारी का स्थान बहुत ही महत्वपूर्ण था। ऐसा कहा जाता है कि "जहाँ नारी की पूजा होती है, वहाँ देवता निवास करते हैं" मध्यकालीन युग से नारी का पतन शुरू हो गया। नारी को दासी या गुलाम माना जाने लगा। नारी घर में ही कैद हो गई। 19वीं सदी में राजा राममोहन राय, स्वामी विवेकानंद, दयानंद सरस्वती आदि महानुभावों एव समाज सुधारकों के प्रयासों से नारी अबला से सबला बनती गई। सम्पूर्ण कायापलट हो गयी। नारी प्रगति के पथ पर निरंतर आगे बढ़ती गयी, आज की नारी ने जमीन से लेकर अबर तक अपना कब्जा जमाया है। नर और नारी रथ के दो पहिये हैं, रथ को सुव्यवस्थित चलाने के लिए सतुलन होना चाहिए, तो ही परिवार सुख से जीता है। शिक्षित नारी परिवार की उद्धारक है। प्रत्येक घर में नारी का सम्मान होना चाहिए। समाज में प्रचलित कुरीतियों को दूर करने में दोनों को एक दूसरे का सहयोगी बनना चाहिए। नारी का उद्धार देश का उद्धार है। अर्थात् नारी को सदैव सम्मान देना चाहिए।

SubQuestion No : 21

Q.21 आकाश- कौन-सा शब्द रेखांकित शब्द का पर्याय नहीं है?

- Ans 1. नभ
 2. गगन
 3. अम्बर
 4. अतल

Question ID : 65497828715

Status : Not Answered

Chosen Option : --

Comprehension:

निम्नलिखित गद्यांश को पढ़कर प्रश्नों के उचित उत्तर दीजिए-

प्राचीन काल में नारी का स्थान बहुत ही महत्वपूर्ण था। ऐसा कहा जाता है कि "जहाँ नारी की पूजा होती है, वहाँ देवता निवास करते हैं" मध्यकालीन युग से नारी का पतन शुरू हो गया। नारी को दासी या गुलाम माना जाने लगा। नारी घर में ही कैद हो गई। 19वीं सदी में राजा राममोहन राय, स्वामी विवेकानंद, दयानंद सरस्वती आदि महानुभावों एव समाज सुधारकों के प्रयासों से नारी अबला से सबला बनती गई। सम्पूर्ण कायापलट हो गयी। नारी प्रगति के पथ पर निरंतर आगे बढ़ती गयी, आज की नारी ने जमीन से लेकर अबर तक अपना कब्जा जमाया है। नर और नारी रथ के दो पहिये हैं, रथ को सुव्यवस्थित चलाने के लिए सतुलन होना चाहिए, तो ही परिवार सुख से जीता है। शिक्षित नारी परिवार की उद्धारक है। प्रत्येक घर में नारी का सम्मान होना चाहिए। समाज में प्रचलित कुरीतियों को दूर करने में दोनों को एक दूसरे का सहयोगी बनना चाहिए। नारी का उद्धार देश का उद्धार है। अर्थात् नारी को सदैव सम्मान देना चाहिए।

SubQuestion No : 22

Q.22 अबला रेखांकित शब्द का विलोम बताइए।

- Ans 1. नारी
 2. दासी
 3. दुर्बल
 4. सबला

Question ID : 65497828716

Status : Not Answered

Chosen Option : --

Comprehension:

निम्नलिखित गद्यांश को पढ़कर प्रश्नों के उचित उत्तर दीजिए-

प्राचीन काल में नारी का स्थान बहुत ही महत्वपूर्ण था। ऐसा कहा जाता है कि "जहाँ नारी की पूजा होती है, वहाँ देवता निवास करते हैं" मध्यकालीन युग से नारी का पतन शुरू हो गया। नारी को दासी या गुलाम माना जाने लगा। नारी घर में ही कैद हो गई। 19वीं सदी में राजा राममोहन राय, स्वामी विवेकानंद, दयानंद सरस्वती आदि महानुभावों एव समाज सुधारकों के प्रयासों से नारी अबला से सबला बनती गई। सम्पूर्ण कायापलट हो गयी। नारी प्रगति के पथ पर निरंतर आगे बढ़ती गयी, आज की नारी ने जमीन से लेकर अबर तक अपना कब्जा जमाया है। नर और नारी रथ के दो पहिये हैं, रथ को सुव्यवस्थित चलाने के लिए सतुलन होना चाहिए, तो ही परिवार सुख से जीता है। शिक्षित नारी परिवार की उद्धारक है। प्रत्येक घर में नारी का सम्मान होना चाहिए। समाज में प्रचलित कुरीतियों को दूर करने में दोनों को एक दूसरे का सहयोगी बनना चाहिए। नारी का उद्धार देश का उद्धार है। अर्थात् नारी को सदैव सम्मान देना चाहिए।

SubQuestion No : 23

Q.23 एक दूसरे का _____ बनना चाहिए। रिक्त स्थान की पूर्ति कीजिए।

- Ans
- 1. सयोगी
 - 2. सहयोगी
 - 3. सहाय
 - 4. असहयोगी

Question ID : 65497828717

Status : Not Answered

Chosen Option : --

Comprehension:

निम्नलिखित गद्यांश को पढ़कर प्रश्नों के उचित उत्तर दीजिए-

प्राचीन काल में नारी का स्थान बहुत ही महत्वपूर्ण था। ऐसा कहा जाता है कि "जहाँ नारी की पूजा होती है, वहाँ देवता निवास करते हैं" मध्यकालीन युग से नारी का पतन शुरू हो गया। नारी को दासी या गुलाम माना जाने लगा। नारी घर में ही कैद हो गई। 19वीं सदी में राजा राममोहन राय, स्वामी विवेकानंद, दयानंद सरस्वती आदि महानुभावों एव समाज सुधारकों के प्रयासों से नारी अबला से सबला बनती गई। सम्पूर्ण कायापलट हो गयी। नारी प्रगति के पथ पर निरंतर आगे बढ़ती गयी, आज की नारी ने जमीन से लेकर अबर तक अपना कब्जा जमाया है। नर और नारी रथ के दो पहिये हैं, रथ को सुव्यवस्थित चलाने के लिए सतुलन होना चाहिए, तो ही परिवार सुख से जीता है। शिक्षित नारी परिवार की उद्धारक है। प्रत्येक घर में नारी का सम्मान होना चाहिए। समाज में प्रचलित कुरीतियों को दूर करने में दोनों को एक दूसरे का सहयोगी बनना चाहिए। नारी का उद्धार देश का उद्धार है। अर्थात् नारी को सदैव सम्मान देना चाहिए।

SubQuestion No : 24

Q.24 मध्यकालीन युग में नारी की स्थिति क्या थी?

- Ans
- 1. दासी
 - 2. पूजनीय थी
 - 3. शिक्षित थी
 - 4. महत्वपूर्ण स्थान था

Question ID : 65497828718

Status : Not Answered

Chosen Option : --

Comprehension:

निम्नलिखित गद्यांश को पढ़कर प्रश्नों के उचित उत्तर दीजिए-

प्राचीन काल में नारी का स्थान बहुत ही महत्वपूर्ण था। ऐसा कहा जाता है कि "जहाँ नारी की पूजा होती है, वहाँ देवता निवास करते हैं" मध्यकालीन युग से नारी का पतन शुरू हो गया। नारी को दासी या गुलाम माना जाने लगा। नारी घर में ही कैद हो गई। 19वीं सदी में राजा राममोहन राय, स्वामी विवेकानंद, दयानंद सरस्वती आदि महानुभावों एवं समाज सुधारकों के प्रयासों से नारी अबला से सबला बनती गई। सम्पूर्ण कायापलट हो गयी। नारी प्रगति के पथ पर निरंतर आगे बढ़ती गयी, आज की नारी ने जमीन से लेकर अंतरिक्ष तक अपना कब्जा जमाया है। नर और नारी रथ के दो पहिये हैं, रथ को सुव्यवस्थित चलाने के लिए सतुलन होना चाहिए, तो ही परिवार सुख से जीता है। शिक्षित नारी परिवार की उद्धारक है। प्रत्येक घर में नारी का सम्मान होना चाहिए। समाज में प्रचलित कुरीतियों को दूर करने में दोनों को एक-दूसरे का सहयोगी बनना चाहिए। नारी का उद्धार देश का उद्धार है। अर्थात् नारी को सदैव सम्मान देना चाहिए।

SubQuestion No : 25

Q.25 गद्यांश का उचित शीर्षक बताइए।

- Ans**
- 1. यदि मैं शिक्षक बनूँ...!
 - 2. मेरे सपनों का भारत
 - 3. नारी तू नारायणी
 - 4. दहेज प्रथा

Question ID : 65497828719

Status : Not Answered

Chosen Option : --

KD Job Updates

Exam Date	30/11/2021
Exam Time :	4:00 PM - 5:30 PM
Subject	Constable GD 2021

Section : Part A General Intelligence and Reasoning

Q.1 अक्षरों के उस संयोजन का चयन कीजिए, जिसे दी गई श्रृंखला के रिक्त स्थानों में क्रमबद्ध रूप से रखने पर श्रृंखला पूर्ण हो जाएगी।

D Q _ R _ D _ M R _ D _ M _ T

- Ans
- 1. M Q T T Q R
 - 2. M T Q R Q T
 - 3. M T Q T R Q
 - 4. M T Q T Q R

Question ID : 65497835473
Status : Answered
Chosen Option : 4

Q.2 चार अक्षर समूह दिए गए हैं, जिनमें से तीन किसी तरह से समान हैं और एक असंगत है। उस असंगत अक्षर समूह का चयन कीजिए।

- Ans
- 1. NRV
 - 2. QVB
 - 3. SXD
 - 4. YDJ

Question ID : 65497835451
Status : Answered
Chosen Option : 1

Q.3 उस विकल्प का चयन कीजिए, जिसका तीसरे पद से वही संबंध है, जो दूसरे पद का पहले पद से है।

BEGIN : EBGNI :: CADET : ?

- Ans
- 1. ACTDE
 - 2. TEDCA
 - 3. ADFTE
 - 4. ACDTE

Question ID : 65497835469
Status : Answered
Chosen Option : 4

Q.4 एक निश्चित कूट भाषा में, PLAN को OBMQ लिखा जाता है, और NOT को UPO लिखा जाता है। उसी कूट भाषा में MOTHER को किस प्रकार लिखा जाएगा?

- Ans 1. SFIUQM
 2. SFIUPN
 3. SFIVQN
 4. SGIURN

Question ID : 65497835470
Status : Answered
Chosen Option : 1

Q.5 If 'A' denotes 'addition', 'B' denotes 'multiplication', 'C' denotes 'subtraction', and 'D' denotes 'division', then what will be the value of the following expression?

82 A 126 B 16 D 112 C 73

- Ans 1. 52
 2. 27
 3. 72
 4. 25

Question ID : 65497835466
Status : Answered
Chosen Option : 2

Q.6 An amount of ₹870 is divided between Urmi and Kripa in the ratio of 18 : 11, respectively, whereas an amount of ₹960 is divided between Poorvi and Mrinal in the ratio of 5 : 7, respectively. Who gets the maximum amount of money among all four?

- Ans 1. Kripa
 2. Urmi
 3. Poorvi
 4. Mrinal

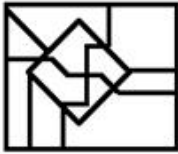
Question ID : 65497835458
Status : Answered
Chosen Option : 2

Q.7 उस विकल्प का चयन करें जिसमें दी गई आकृति सन्निहित है (आकृति को घुमाने की अनुमति नहीं है)।



Ans

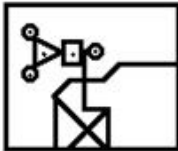
✗ 1.



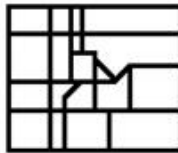
✗ 2.



✗ 3.



✓ 4.

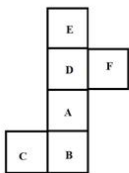


Question ID : 65497835468

Status : Answered

Chosen Option : 1

Q.8 दी गई शीट को मोड़कर एक घन बनाया जाता है। इस प्रकार से बने घन में, उस अक्षर का चयन करें, जो अक्षर 'D' दर्शाने वाले फलक के विपरीत वाले फलक पर होगा।



Ans

✗ 1. E

✓ 2. B

✗ 3. C

✗ 4. F

Question ID : 65497835467

Status : Answered

Chosen Option : 2

Q.9 उस सही विकल्प का चयन कीजिए, जो दिए गए शब्दों के उस क्रम को दर्शाता है, जिस क्रम में वे अंग्रेज़ी शब्दकोश में मौजूद होते हैं।

1. Carpet
2. Caring
3. Carrot
4. Creamy
5. Creek

- Ans
- 1. 2, 1, 3, 5, 4
 - 2. 1, 2, 3, 4, 5
 - 3. 2, 1, 3, 4, 5
 - 4. 2, 3, 1, 4, 5

Question ID : 65497835472

Status : Answered

Chosen Option : 3

Q.10 In a cafeteria, seven customers (B, G, H, K, L, M and N) sit on three different benches (X, Y and Z). Each bench must have at least two customers sitting on it. Customer G does not sit with customers K, L and M. Customer B sits only with customer N. Customer K sits on Bench X with his best friends. Customer H sits on Bench Z. On which bench are there three customers?

- Ans
- 1. Only Bench X
 - 2. Bench X or Bench Y
 - 3. Only Bench Z
 - 4. Only Bench Y

Question ID : 65497835462

Status : Not Attempted and Marked For Review

Chosen Option : --

Q.11 वर्गों के उस समुच्चय का चयन कीजिए जिनके मध्य के संबंध को दिए गए वेन आरेख द्वारा सर्वश्रेष्ठ रूप से निरूपित किया गया है।



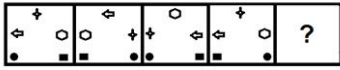
- Ans
- 1. दादा, माता, फार्मासिस्ट
 - 2. कार्डियोलॉजिस्ट, वकील, प्रोफेसर
 - 3. माताएं, महिलाएं, वकील
 - 4. पुत्रियां, भाई, इंजीनियर

Question ID : 65497835463

Status : Answered

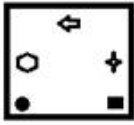
Chosen Option : 3

Q.12 दिए गए विकल्पों में से उस आकृति का चयन कीजिए, जो निम्नलिखित श्रृंखला में प्रश्नवाचक चिन्ह (?) के स्थान पर आ सकती है।

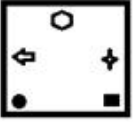


Ans

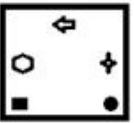
✓ 1.



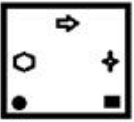
✗ 2.



✗ 3.



✗ 4.



Question ID : 65497835475

Status : Answered

Chosen Option : 1

Q.13 Read the given statements and conclusions carefully. Assuming that the information given in the statements is true, even if it appears to be at variance with commonly known facts, decide which of the given conclusions logically follow(s) from the statements.

Statements:

1. All gardens are resorts.
2. No resort is a court.
3. All parks are courts.

Conclusions:

- I. No court is a garden.
- II. No garden is a park.

Ans

✗ 1. None of the conclusions follow

✗ 2. Only conclusion I follows

✗ 3. Only conclusion II follows

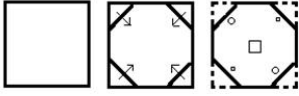
✓ 4. Both the conclusions follow

Question ID : 65497835456

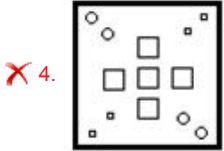
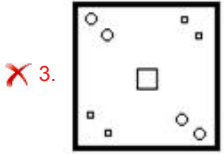
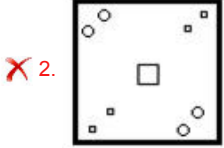
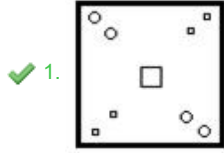
Status : Answered

Chosen Option : 4

Q.14 The sequence of folding a piece of paper and the manner in which the folded paper has been cut is shown in the following figures. How would this paper look when unfolded?



Ans



Question ID : 65497835459
 Status : Answered
 Chosen Option : 1

Q.15 दिए गए विकल्पों में से उस संख्या का चयन कीजिए जो निम्नलिखित श्रृंखला में प्रश्न चिह्न (?) को प्रतिस्थापित कर सकती है।

27, 41, 57, 76, 99, ?

- Ans
- ✗ 1. 152
 - ✗ 2. 114
 - ✗ 3. 136
 - ✓ 4. 127

Question ID : 65497835453
 Status : Answered
 Chosen Option : 4

Q.16 उस विकल्प का चयन कीजिए जिसका तीसरी संख्या से वही संबंध है, जो दूसरी संख्या का पहली संख्या से है और छठी संख्या का पाँचवीं संख्या से है।

6 : 4 :: 11 : ? :: 16 : 8

- Ans
- ✓ 1. 6
 - ✗ 2. 5
 - ✗ 3. 8
 - ✗ 4. 7

Question ID : 65497835465
 Status : Not Attempted and Marked For Review
 Chosen Option : --

Q.17 एक निश्चित कूट भाषा में, 'NAUSEA' को '236943' और 'SYRUP' को '97165' के रूप में कूटबद्ध किया गया है। उसी भाषा में, 'SUPPRESS' को किस रूप में कूटबद्ध किया जाएगा?

- Ans
- 1. 96552599
 - 2. 86552489
 - 3. 96441499
 - 4. 96551499

Question ID : 65497835452
Status : Answered
Chosen Option : 4

Q.18 Six friends, Govardan, Sarayu, Rekha, Shyamala, Hema and Ganesh, are standing in a queue at a ticket counter. There are two persons between Sarayu and Hema. Rekha is between Hema and Shyamala. Only one person is standing ahead of Govardan. Ganesh who is third from the back end of the row, is between Govardan and Hema. Which two persons are standing between Sarayu and Hema?

- Ans
- 1. Shyamala and Rekha
 - 2. Govardan and Rekha
 - 3. Ganesh and Shyamala
 - 4. Govardan and Ganesh

Question ID : 65497835464
Status : Answered
Chosen Option : 3

Q.19 दिए गए विकल्पों में से उस संख्या का चयन कीजिए, जो निम्नलिखित श्रेणी में प्रश्नवाचक चिह्न (?) के स्थान पर आ सकती है।

23, 40, 74, 125, 193, ?

- Ans
- 1. 270
 - 2. 278
 - 3. 290
 - 4. 225

Question ID : 65497835474
Status : Answered
Chosen Option : 2

Q.20 एक निश्चित कूट भाषा में, 'POUR' को 'OPRU' और 'TACKLE' को 'ATKCEL' के रूप में लिखा जाता है। उसी भाषा में 'FORMATIONS' कैसे लिखा जाएगा?

- Ans
- 1. OFNRTAONSI
 - 2. OFMTRAOISO
 - 3. MFPRTAOKSN
 - 4. OFMRTAOISN

Question ID : 65497835455
Status : Answered
Chosen Option : 4

Q.21 उस विकल्प का चयन कीजिए जिसमें दी गई संख्याएँ आपस में उसी तरह से संबंधित हैं जिस प्रकार दिए गए समुच्चय की संख्याएँ आपस में संबंधित हैं।

(12, 14, 56)

- Ans 1. (16, 18, 96)
 2. (24, 16, 214)
 3. (10, 16, 82)
 4. (14, 20, 145)

Question ID : 65497835457
 Status : Not Answered
 Chosen Option : --

Q.22 दिए गए विकल्पों में से उस अक्षर-समूह का चयन कीजिए जो निम्न श्रृंखला में प्रश्नवाचक चिह्न (?) के स्थान पर आ सकता है।

BEI, EHL, HKO, KNR, ?

- Ans 1. NPS
 2. NRU
 3. NQU
 4. NQT

Question ID : 65497835460
 Status : Answered
 Chosen Option : 3

Q.23 रोशन, कृप का भाई है, जो प्रांजल का पुत्र है। वैष्णवी, आयुष की पत्नी हैं। प्रमिला, देविका की पुत्री है। देविका, आयुष की दादी है, जो रोशन का बेटा है। रोशन का प्रमिला से क्या संबंध है?

- Ans 1. ससुर
 2. पिता
 3. भाई
 4. भतीजा/भांजा

Question ID : 65497835471
 Status : Answered
 Chosen Option : 3

Q.24 Select the correct mirror image of the given combination when the mirror is placed at the right side.

d e t A 9 P

- Ans 1. q e t A 9 p
 2. q e t A 9 p
 3. d e t A 9 p
 4. q e t A 9 p

Question ID : 65497835454
 Status : Answered
 Chosen Option : 1

Q.25 'Ammeter' is related to 'Current' in the same way as 'Anemometer' is related to _____.

- Ans
- 1. Temperature
 - 2. Potential Difference
 - 3. Water
 - 4. Wind Speed and Direction

Question ID : 65497835461
Status : Answered
Chosen Option : 2

Section : Part B General Knowledge and General Awareness

Q.1 भारत में वन (संरक्षण) अधिनियम वर्ष _____ में पारित किया गया था।

- Ans
- 1. 1976
 - 2. 1988
 - 3. 1980
 - 4. 1974

Question ID : 65497835496
Status : Answered
Chosen Option : 1

Q.2 'प्रधान मंत्री जीवन ज्योति बीमा योजना' किस वर्ष शुरू की गई थी?

- Ans
- 1. 2018
 - 2. 2014
 - 3. 2015
 - 4. 2017

Question ID : 65497835483
Status : Answered
Chosen Option : 1

Q.3 निम्नलिखित में से किस वेब श्रृंखला ने 48वें अंतर्राष्ट्रीय ऐमी पुरस्कार 2020 में 'सर्वश्रेष्ठ ड्रामा सीरीज़' का पुरस्कार जीता?

- Ans
- 1. आश्रम
 - 2. मेड इन हेवन
 - 3. दिल्ली ब्राइम
 - 4. मिर्जापुर

Question ID : 65497835479
Status : Answered
Chosen Option : 4

Q.4 निम्नलिखित में से कौन सा कार्य मेडुला ऑब्लॉंगेटा (medulla oblongata) द्वारा नियंत्रित नहीं होता है?

- Ans
- 1. छींकना
 - 2. उल्टी करना
 - 3. ताली बजाना
 - 4. खाँसना

Question ID : 65497835498
Status : Answered
Chosen Option : 1

Q.5 निम्नलिखित में से किस झील का निर्माण अत्यंतनूतन युग के दौरान उल्का प्रभाव द्वारा हुआ था?

- Ans
- 1. वेम्बनाड झील, केरल
 - 2. चिल्का झील, ओडिशा
 - 3. लोकटक झील, मणिपुर
 - 4. लोनार झील, महाराष्ट्र

Question ID : 65497835478
Status : Answered
Chosen Option : 1

Q.6 निम्नलिखित में से किस देश ने जून 2021 में आयोजित G7 लीडर्स समिट की अध्यक्षता की?

- Ans
- 1. कोरिया गणराज्य
 - 2. यूनाइटेड किंगडम
 - 3. भारत
 - 4. ऑस्ट्रेलिया

Question ID : 65497835497
Status : Answered
Chosen Option : 2

Q.7 सांप्रदायिक समस्याओं पर गांधी-जिन्ना वार्ता के टूटने के बाद एक न्यायिक ढांचे में सांप्रदायिक मामले की जांच करने के लिए नवंबर 1944 में गैर-दलीय सम्मेलन की स्थायी समिति द्वारा किस समिति को नियुक्त किया गया था?

- Ans
- 1. जाकिर हुसैन समिति
 - 2. सप्रू समिति
 - 3. सरदार पटेल समिति
 - 4. बलवंत राय मेहता समिति

Question ID : 65497835482
Status : Answered
Chosen Option : 3

Q.8 17 सितंबर, 2020 को, अंतर्राष्ट्रीय टेनिस महासंघ (ITF) ने यह घोषणा की, कि महासंघ या 'फेड' कप को अब महान महिला टेनिस खिलाड़ी के सम्मान में _____ के रूप में जाना जाएगा।

- Ans
- 1. मार्टिना नवरातिलोवा कप
 - 2. बिली जीन किंग कप
 - 3. क्रिस एवर्ट कप
 - 4. स्टेफी ग्राफ कप

Question ID : 65497835480
Status : Not Attempted and Marked For Review
Chosen Option : --

Q.9 सम्राट _____ ने मुहम्मद हुसैन अल-कातिब कश्मीरी को उनकी सुंदर लिखावट के लिए ज़रीन कलम (Zarin Qalam) या स्वर्ण कलम की उपाधि से सम्मानित किया।

- Ans
- 1. शाहजहाँ
 - 2. जहाँगीर
 - 3. औरंगज़ेब
 - 4. अकबर

Question ID : 65497835499
Status : Answered
Chosen Option : 2

Q.10 निम्न में से कौन नवंबर 2020 तक नेपाल की क्रिकेट टीम का कप्तान था?

- Ans 1. ज्ञानेंद्र मल्ला
 2. रोहित पौडेल
 3. संदीप लामिछाने
 4. दीपेन्द्र सिंह ऐरी

Question ID : 65497835493
 Status : Answered
 Chosen Option : 3

Q.11 अक्टूबर 2020 में, अपनी महिला यात्रियों की सुरक्षा के लिए भारतीय रेलवे द्वारा शुरू की गई पहल का नाम क्या था?

- Ans 1. नारी सेवा
 2. मेरी सहेली
 3. नारी सहायक
 4. नारी शक्ति

Question ID : 65497835487
 Status : Answered
 Chosen Option : 4

Q.12 जब भारत के संविधान का मसौदा तैयार किया जा रहा था, संविधान सभा को उस अशांति को ध्यान में रखना था जिससे भारत गुजर रहा था। उस परिदृश्य में निम्नलिखित में से कौन सा मुद्दा प्रासंगिक नहीं था?

- Ans 1. लोगों की सामाजिक-आर्थिक स्थिति बहुत अनुकूल थी।
 2. रियासतें अपने भविष्य के बारे में अनिश्चित थीं।
 3. देश कई अलग-अलग समुदायों से बना था।
 4. भारत और पाकिस्तान के विभाजन की पुष्टि हुई थी।

Question ID : 65497835486
 Status : Answered
 Chosen Option : 1

Q.13 कदमाई _____ राजवंश के तहत भू-राजस्व का एक रूप था।

- Ans 1. चोल
 2. कुषाण
 3. चालुक्य
 4. गुप्त

Question ID : 65497835494
 Status : Answered
 Chosen Option : 1

Q.14 अरुणाचल के फिल्म निर्माता को 2020 में _____ पर एक वृत्तचित्र (डाक्यूमेंट्री) के लिए प्रतिष्ठित दादा साहेब फाल्के पुरस्कार प्राप्त हुआ था।

- Ans 1. नाव की सवारी
 2. शहद निकालने
 3. जानवरों के शिकार
 4. पक्षी देखना

Question ID : 65497835491
 Status : Answered
 Chosen Option : 3

Q.15 निम्नलिखित में से कौन सी, 'ठोस' की विशेषता नहीं है?

- Ans
- 1. ठोस का एक निश्चित आयतन होता है।
 - 2. ठोस को आसानी से संपीडित किया जा सकता है।
 - 3. बल के अधीन होने पर ठोस टूट सकता है।
 - 4. ठोस के आकार को बदलना मुश्किल है, इसलिए वे कठोर होते हैं।

Question ID : 65497835489
Status : Answered
Chosen Option : 2

Q.16 7 सितंबर 2021 को, नासा (NASA) ने घोषणा की कि पर्सीवियेंस रोवर ने मंगल ग्रह की _____ के पहले नमूने के संग्रह का कार्य पूर्ण कर लिया है।

- Ans
- 1. मृदा
 - 2. धूल
 - 3. चट्टान
 - 4. बर्फ

Question ID : 65497835500
Status : Answered
Chosen Option : 3

Q.17 हम हिंदू कैलेंडर के अनुसार 'होली' का त्योहार किस दिन मनाते हैं?

- Ans
- 1. पूर्णिमा के एक दिन बाद
 - 2. अमावस्या के दिन
 - 3. पूर्णिमा से एक दिन पहले
 - 4. पूर्णिमा के दिन

Question ID : 65497835488
Status : Answered
Chosen Option : 2

Q.18 27 नवंबर 2020 तक, भारत का विदेशी मुद्रा भंडार लगभग _____ बिलियन था।

- Ans
- 1. \$774
 - 2. \$574
 - 3. \$474
 - 4. \$374

Question ID : 65497835481
Status : Answered
Chosen Option : 2

Q.19 निम्नलिखित में से कौन सी घटना वर्ष 1856 में हुई थी?

- Ans
- 1. तात्या टोपे को पकड़ लिया गया, भागने की कोशिश की और मार डाला गया।
 - 2. अवध पर ब्रिटिश ईस्ट इंडिया कंपनी ने कब्जा कर लिया था।
 - 3. मंगल पांडे को फांसी दी गई।
 - 4. बहादुर शाह जफर को रंगून की जेल भेज दिया गया।

Question ID : 65497835495
Status : Answered
Chosen Option : 4

Q.20 निम्न में से कौन-सा 1865 में स्थापित भारत का सबसे पुराना संयुक्त स्टॉक बैंक है?

- Ans
- 1. स्टेट बैंक ऑफ़ त्रावणकोर
 - 2. देना बैंक
 - 3. केनरा बैंक
 - 4. इलाहाबाद बैंक (अब इंडियन बैंक)

Question ID : 65497835485
Status : Answered
Chosen Option : 4

Q.21 निम्नलिखित में से कौन सा एक एककोशिकीय जीव है?

- Ans
- 1. लाल शैवाल
 - 2. मांसपेशियों की कोशिकाएं
 - 3. कवक
 - 4. जीवाणु

Question ID : 65497835490
Status : Answered
Chosen Option : 1

Q.22 शास्त्रीय गायिका, गिरिजा देवी हिंदुस्तानी शास्त्रीय संगीत के किस स्वरूप में पारंगत थीं?

- Ans
- 1. तराना
 - 2. ध्रुपद
 - 3. ठुमरी
 - 4. खयाल

Question ID : 65497835477
Status : Not Answered
Chosen Option : --

Q.23 2011 की जनगणना के अनुसार भारत के निम्नलिखित में से किस राज्य में जनसंख्या का सबसे अधिक घनत्व था?

- Ans
- 1. सिक्किम
 - 2. बिहार
 - 3. मध्य प्रदेश
 - 4. उत्तर प्रदेश

Question ID : 65497835492
Status : Answered
Chosen Option : 2

Q.24 200 एक दिवसीय अंतरराष्ट्रीय (ODI) मैच खेलने वाली पहली भारतीय महिला क्रिकेटर निम्नलिखित में से कौन है?

- Ans
- 1. अनुजा पाटिल
 - 2. मिताली राज
 - 3. पूनम यादव
 - 4. दीप्ति शर्मा

Question ID : 65497835484
Status : Answered
Chosen Option : 2

Q.25 निम्नलिखित में से कौन-सी नदी तिब्बत, भारत और बांग्लादेश से होकर बहती है?

- Ans 1. ब्रह्मपुत्र
 2. यमुना
 3. नर्मदा
 4. गंगा

Question ID : 65497835476
 Status : Answered
 Chosen Option : 1

Section : Part C Elementary Mathematics

Q.1 Varun bought a curtain cloth from a wholesaler at 20% discount on the marked price. He then marked the cloth at 20% higher than the original marked price and allowed 10% discount. What is his percentage profit?

- Ans 1. 25
 2. 20
 3. 30
 4. 35

Question ID : 65497835501
 Status : Answered
 Chosen Option : 4

Q.2 $85 \div 17$ of $4 - [65 \div 13$ of $2 - 14 \times (19 - 25) \div 12 - 10]$ of $\frac{2}{3}$ का मान ज्ञात कीजिए।

- Ans 1. $\frac{11}{12}$
 2. $\frac{3}{2}$
 3. $\frac{7}{6}$
 4. $\frac{19}{12}$

Question ID : 65497835521
 Status : Answered
 Chosen Option : 4

Q.3 One-fifth of three-eighths of two-thirds of a number is 20. What is 60% of that number?

- Ans 1. 120
 2. 156
 3. 365
 4. 240

Question ID : 65497835514
 Status : Answered
 Chosen Option : 4

Q.4 किसी स्कूल में लड़कियों और लड़कों की संख्या का अनुपात 2 : 7 है। यदि लड़कियों और लड़कों की संख्या में क्रमशः 15% और 20% की वृद्धि हो जाती है, तो नया अनुपात कितना होगा?

- Ans**
- ✓ 1. 23 : 84
 - ✗ 2. 19 : 14
 - ✗ 3. 24 : 71
 - ✗ 4. 21 : 22

Question ID : 65497835519
Status : Answered
Chosen Option : 1

Q.5 A trader allows a discount of 10% on the marked price and still gains 8% on the whole. At what percentage above the cost price does he mark his goods?

- Ans**
- ✗ 1. 35%
 - ✗ 2. 25%
 - ✗ 3. 18%
 - ✓ 4. 20%

Question ID : 65497835504
Status : Answered
Chosen Option : 4

Q.6 Rohit can complete a piece of work in 32 days, while Raj can complete it by himself in 48 days. They started the work together, but Rohit left 8 days before the work got over. For how many days did they work together?

- Ans**
- ✗ 1. 18
 - ✗ 2. 12
 - ✗ 3. 15
 - ✓ 4. 16

Question ID : 65497835515
Status : Answered
Chosen Option : 2

Q.7 The average monthly income of A and B is ₹4,500, the average monthly income of B and C is ₹5,600, and the average monthly income of A and C is ₹4,800. Find the monthly income of B.

- Ans**
- ✗ 1. ₹6,900
 - ✗ 2. ₹4,750
 - ✗ 3. ₹3,700
 - ✓ 4. ₹5,300

Question ID : 65497835512
Status : Answered
Chosen Option : 4

Q.8 A person saves 12% of his income. One year later, his income shoots up by 25% but he still saves the same amount of money. What is the percentage hike in his expenditure?

- Ans**
- 1. 27.4%
 - 2. 28.4%
 - 3. 25.4%
 - 4. 33%

Question ID : **65497835503**
 Status : **Answered**
 Chosen Option : **2**

Q.9 Two friends, A and B, invested in a business in the ratio of 3 : 4. A withdrew his share two months early. At the end of one year, the total profit was ₹2,600. A's share of profit will be:

- Ans**
- 1. ₹750
 - 2. ₹1,000
 - 3. ₹800
 - 4. ₹1,110

Question ID : **65497835508**
 Status : **Not Answered**
 Chosen Option : --

Q.10 Find the single discount equivalent to two successive discounts of 25% and 10%.

- Ans**
- 1. 28%
 - 2. 40.25%
 - 3. 32.5%
 - 4. 45.5%

Question ID : **65497835513**
 Status : **Answered**
 Chosen Option : **3**

Q.11 The ratio of the radii of two right circular cones, C and D, is 2 : 3 and their heights are in the ratio 3 : 2. The ratio of the volume of cone D to that of cone C is:

- Ans**
- 1. 4 : 3
 - 2. 2 : 3
 - 3. 3 : 4
 - 4. 3 : 2

Question ID : **65497835510**
 Status : **Answered**
 Chosen Option : **4**

Q.12 $\frac{2}{5}$ of $7\frac{1}{2} \div \frac{3}{4} - \frac{3}{4} \times 1\frac{1}{2} \div 2\frac{1}{4}$ का मान ज्ञात कीजिए।
 $5\frac{1}{2} \div 3\frac{2}{3}$ of $\frac{3}{8}$

- Ans
1. $\frac{3}{4}$
2. $\frac{1}{2}$
3. $\frac{7}{8}$
4. $\frac{5}{3}$

Question ID : 65497835524

Status : Answered

Chosen Option : 3

Q.13 एक परिवार में 5 व्यक्ति चीनी की खरीद पर 10% खर्च करते हैं। चीनी के मूल्य में 10% की वृद्धि हुई। व्यय में वृद्धि न होने देने के लिए चीनी की खपत में प्रतिशत कमी क्या होनी चाहिए?

- Ans
1. 11%
2. $9\frac{1}{11}\%$
3. 10%
4. 9%

Question ID : 65497835511

Status : Not Answered

Chosen Option : --

Q.14 A sum of money at compound interest amounts to seven times of itself in 3 years. In how many years will it be 2401 times of itself?

- Ans
1. 9
2. 12
3. 18
4. 15

Question ID : 65497835506

Status : Answered

Chosen Option : 2

Q.15 How many maximum litres of milk can a hemispherical bowl of diameter 9 cm hold approximately?

- Ans
1. 0.191 litres
2. 0.90 litres
3. 0.0191 litres
4. 1.90 litres

Question ID : 65497835507

Status : Answered

Chosen Option : 3

Q.16 कार्तिकेय ने 2% वार्षिक व्याज की दर से चक्रवृद्धि व्याज पर 3 वर्ष के लिए सावधि जमा योजना में ₹9,000 की राशि का निवेश किया। सावधि जमा राशि की परिपक्वता पर उसे कितनी राशि (दशमलव के दो स्थानों तक सही) मिलेगी?

- Ans**
- 1. ₹9,650
 - 2. ₹10,255.25
 - 3. ₹9,525.50
 - 4. ₹9,550.87

Question ID : 65497835520
Status : Answered
Chosen Option : 4

Q.17 By selling 90 pens for ₹1,575, a shopkeeper loses 30%. How many pens should he sell for ₹708 so as to earn a profit of 18%?

- Ans**
- 1. 30
 - 2. 20
 - 3. 24
 - 4. 25

Question ID : 65497835522
Status : Not Answered
Chosen Option : --

Q.18 Find the least number which is a perfect square and is divisible by each of the following numbers.

15, 24 and 36

- Ans**
- 1. 3600
 - 2. 1600
 - 3. 900
 - 4. 6400

Question ID : 65497835517
Status : Answered
Chosen Option : 1

Q.19 Pipes A and B can fill a tank in 18 hours and 27 hours, respectively. If both the pipes are opened on alternate hours, one at a time, and pipe A is opened for the first hour, then in how many hours will the tank be filled completely?

- Ans**
- 1. 21
 - 2. $20\frac{1}{2}$
 - 3. 20
 - 4. $21\frac{1}{2}$

Question ID : 65497835523
Status : Answered
Chosen Option : 4

Q.20 For a certain sum, in 2 years, the simple interest is ₹80 and the compound interest for the same period and at the same rate of interest is ₹85. The rate of interest per annum is:

- Ans
- 1. 7.5%
 - 2. 8.5%
 - 3. 12.5%
 - 4. 5.5%

Question ID : 65497835509
Status : Answered
Chosen Option : 3

Q.21 6 व्यक्तियों का औसत वजन 1.5 kg बढ़ जाता है जब उनमें से 45 kg वजन वाले व्यक्ति के स्थान पर एक नया व्यक्ति आता है। नए व्यक्ति का वजन कितना होना चाहिए?

- Ans
- 1. 54 kg
 - 2. 55 kg
 - 3. 50 kg
 - 4. 48 kg

Question ID : 65497835518
Status : Answered
Chosen Option : 1

Q.22 यदि $0.35 : x :: 5 : 6$ है, तो x का मान कितना है?

- Ans
- 1. 0.48
 - 2. 0.42
 - 3. 0.34
 - 4. 0.44

Question ID : 65497835505
Status : Answered
Chosen Option : 2

Q.23 एक मोटरकार ने 60 km/h की चाल से चलना प्रारंभ किया, और इसकी चाल प्रत्येक 3 घंटे पर 20 km/h बढ़ाई जाती है। 470 km की दूरी तय करने में इसे कितने घंटे लगेंगे?

- Ans
- 1. $6\frac{1}{4}$
 - 2. $5\frac{2}{3}$
 - 3. 7
 - 4. $6\frac{1}{2}$

Question ID : 65497835516
Status : Answered
Chosen Option : 4

Q.24 यदि $9987693 \times 6432 \times 7695$ को 10 से भाग दिया जाता है, तो शेषफल कितना बचेगा?

- Ans
- 1. 6
 - 2. 0
 - 3. 1
 - 4. 9

Question ID : 65497835502
Status : Answered
Chosen Option : 2

Q.25 एक आदमी एक निश्चित दूरी के दो-तिहाई भाग को 70 km/h की चाल से और शेष दूरी को 50 km/h की चाल से तय करता है। पूरी यात्रा में उसे $6\frac{4}{5}$ घंटे का समय लगता है। 56 km/h की चाल से, वह पूरी दूरी कितने समय में तय कर पाएगा?

- Ans
- 1. 7 घंटे
 - 2. $8\frac{1}{3}$ घंटे
 - 3. $7\frac{1}{2}$ घंटे
 - 4. 8 घंटे

Question ID : 65497835525
Status : Not Answered
Chosen Option : --

Section : Part D English

Q.1 Select the most appropriate meaning of the given idiom.

To get out of hand

- Ans
- 1. To get out of control
 - 2. To get an award
 - 3. To get angry
 - 4. To get in a trouble

Question ID : 65497835530
Status : Answered
Chosen Option : 1

Q.2 The following sentence has been split into four segments. Identify the segment that contains a grammatical error.

The visitors / were being showed / a collection of / old manuscripts.

- Ans
- 1. a collection of
 - 2. old manuscripts
 - 3. The visitors
 - 4. were being showed

Question ID : 65497835539
Status : Answered
Chosen Option : 4

Q.3 The following sentence has been split into four segments. Identify the segment that contains a grammatical error.

Mohit is expecting / a huge profit / at his / recent investment.

- Ans 1. at his
 2. a huge profit
 3. Mohit is expecting
 4. recent investment

Question ID : 65497835543
Status : Answered
Chosen Option : 1

Q.4 Select the most appropriate option to fill in the blank.

When his mother was away, he took the _____ of his little brother.

- Ans 1. management
 2. power
 3. charge
 4. duty

Question ID : 65497835526
Status : Answered
Chosen Option : 1

Q.5 Select the most appropriate option to fill in the blank.

Mere classroom teaching-learning is boring and _____ for students.

- Ans 1. varied
 2. monotonous
 3. exciting
 4. interesting

Question ID : 65497835533
Status : Answered
Chosen Option : 2

Q.6 Select the most appropriate synonym of the given word.

Maintain

- Ans 1. Care
 2. Ignore
 3. Release
 4. Neglect

Question ID : 65497835528
Status : Answered
Chosen Option : 1

Q.7 Select the most appropriate ANTONYM of the given word.

Beneficial

- Ans
- 1. Careful
 - 2. Fearful
 - 3. Hopeful
 - 4. Harmful

Question ID : 65497835534
Status : Answered
Chosen Option : 4

Q.8 Select the option that can be used as a one-word substitute for the given group of words.

The sound of owls

- Ans
- 1. Hoot
 - 2. Caw
 - 3. Cluck
 - 4. Moo

Question ID : 65497835545
Status : Answered
Chosen Option : 1

Q.9 Select the most appropriate option to fill in the blank.

He _____ an important question in the meeting.

- Ans
- 1. rose
 - 2. risen
 - 3. rise
 - 4. raised

Question ID : 65497835536
Status : Answered
Chosen Option : 1

Q.10 Select the INCORRECTLY spelt word.

- Ans
- 1. Brilliant
 - 2. Illusion
 - 3. Scrutiny
 - 4. Abandan

Question ID : 65497835542
Status : Answered
Chosen Option : 4

Q.11 Select the option that can be used as a one-word substitute for the given group of words.

Able to be harmed easily

Ans 1. Vulnerable

2. Available

3. Accessible

4. Flexible

Question ID : 65497835541

Status : Answered

Chosen Option : 1

Q.12 The following sentence has been divided into parts. One of them may contain an error. Select the part that contains the error from the given options. If you don't find any error, mark 'No error' as your answer.

May I / please borrow / yours book?

Ans 1. No error

2. yours book

3. May I

4. please borrow

Question ID : 65497835527

Status : Answered

Chosen Option : 2

Q.13 Select the most appropriate option that can substitute the underlined segment in the given sentence. If there is no need to substitute it, select 'No substitution required'.

The task our English teacher gave us was both challenging and entertaining.

Ans 1. No substitution required

2. was together challenged

3. was both challenge

4. is additionally challenging

Question ID : 65497835537

Status : Answered

Chosen Option : 1

Q.14 Select the INCORRECTLY spelt word.

Ans 1. Pretanse

2. Reliance

3. Alliance

4. Defiance

Question ID : 65497835535

Status : Answered

Chosen Option : 1

Q.15 Select the most appropriate SYNONYM of the given word.

Compose

- Ans 1. Clutch
 2. Confuse
 3. Collect
 4. Cuddle

Question ID : 65497835544
Status : Answered
Chosen Option : 2

Q.16 Select the most appropriate meaning of the given idiom.

To take stock of

- Ans 1. To measure
 2. To think carefully
 3. To count
 4. To discuss

Question ID : 65497835529
Status : Answered
Chosen Option : 2

Q.17 Select the option that can be used as a one-word substitute for the given group of words.

A large number of things placed one on top of another

- Ans 1. Batch
 2. Group
 3. Pile
 4. Load

Question ID : 65497835531
Status : Answered
Chosen Option : 4

Q.18 Select the option that will improve the underlined part of the given sentence. In case no improvement is needed, select 'No improvement required'.

The children were been drove to the picnic spot in the school bus.

- Ans 1. were been driving
 2. were being driven
 3. were been driven
 4. No improvement required

Question ID : 65497835538
Status : Answered
Chosen Option : 2

Q.19 Select the option that will improve the underlined part of the given sentence. In case no improvement is needed, select 'No improvement required'.

Aphrodite vowed that Paris would had the most beautiful woman as his wife.

- Ans
- 1. will be having
 - 2. would have
 - 3. No improvement required
 - 4. would be having

Question ID : 65497835532
Status : Answered
Chosen Option : 2

Q.20 Select the most appropriate ANTONYM of the given word.

Stout

- Ans
- 1. Obese
 - 2. Heavy
 - 3. Thin
 - 4. Bulky

Question ID : 65497835540
Status : Marked For Review
Chosen Option : 2

Comprehension:

In the following passage, some words have been deleted. Read the passage carefully and select the most appropriate option to fill in each blank.

Football legend Diego Maradona was buried in a private ceremony after a day of (1) _____ scenes in the Argentine capital Buenos Aires. Only (2) _____ two dozen relatives and close friends (3) _____ the final ceremony on Thursday. But (4) _____ huge crowds turned out to pay (5) _____ respects, with many weeping, blowing kisses and praying as they filed past his coffin.

SubQuestion No : 21

Q.21 Select the most appropriate option to fill in blank no. 1.

- Ans
- 1. impressive
 - 2. exciting
 - 3. emotional
 - 4. expressive

Question ID : 65497835547
Status : Answered
Chosen Option : 3

Comprehension:

In the following passage, some words have been deleted. Read the passage carefully and select the most appropriate option to fill in each blank.

Football legend Diego Maradona was buried in a private ceremony after a day of (1) _____ scenes in the Argentine capital Buenos Aires. Only (2) _____ two dozen relatives and close friends (3) _____ the final ceremony on Thursday. But (4) _____ huge crowds turned out to pay (5) _____ respects, with many weeping, blowing kisses and praying as they filed past his coffin.

SubQuestion No : 22

Q.22 Select the most appropriate option to fill in blank no. 2.

- Ans 1. around
 2. more or less
 3. roughly
 4. just

Question ID : 65497835548
 Status : Answered
 Chosen Option : 4

Comprehension:

In the following passage, some words have been deleted. Read the passage carefully and select the most appropriate option to fill in each blank.

Football legend Diego Maradona was buried in a private ceremony after a day of (1) _____ scenes in the Argentine capital Buenos Aires. Only (2) _____ two dozen relatives and close friends (3) _____ the final ceremony on Thursday. But (4) _____ huge crowds turned out to pay (5) _____ respects, with many weeping, blowing kisses and praying as they filed past his coffin.

SubQuestion No : 23

Q.23 Select the most appropriate option to fill in blank no. 3.

- Ans 1. attending
 2. attended
 3. have attended
 4. attend

Question ID : 65497835549
 Status : Answered
 Chosen Option : 2

Comprehension:

In the following passage, some words have been deleted. Read the passage carefully and select the most appropriate option to fill in each blank.

Football legend Diego Maradona was buried in a private ceremony after a day of (1) _____ scenes in the Argentine capital Buenos Aires. Only (2) _____ two dozen relatives and close friends (3) _____ the final ceremony on Thursday. But (4) _____ huge crowds turned out to pay (5) _____ respects, with many weeping, blowing kisses and praying as they filed past his coffin.

SubQuestion No : 24

Q.24 Select the most appropriate option to fill in blank no. 4.

- Ans 1. early
 2. earliest
 3. earlier
 4. as early

Question ID : 65497835550
 Status : Answered
 Chosen Option : 3

Comprehension:

In the following passage, some words have been deleted. Read the passage carefully and select the most appropriate option to fill in each blank.

Football legend Diego Maradona was buried in a private ceremony after a day of (1) _____ scenes in the Argentine capital Buenos Aires. Only (2) _____ two dozen relatives and close friends (3) _____ the final ceremony on Thursday. But (4) _____ huge crowds turned out to pay (5) _____ respects, with many weeping, blowing kisses and praying as they filed past his coffin.

SubQuestion No : 25

Q.25 Select the most appropriate option to fill in blank no. 5.

- Ans 1. their
 2. his
 3. them
 4. its

Question ID : 65497835551
 Status : Answered
 Chosen Option : 1

Section : Part D Hindi

Q.1 दिए गए शब्द के समानार्थी शब्द का चयन करें।

नौका

- Ans 1. तरणी
 2. कलापी
 3. चपला
 4. धरनी

Question ID : 65497835558
 Status : Not Answered
 Chosen Option : --

Q.2 निराधार - रेखांकित शब्द का शब्द समूह बताइए।

- Ans 1. जो दर्द से भरा हो
 2. जिसका कोई आधार नहीं।
 3. जिसका आधार हो
 4. जो पढ़ा-लिखा न हो

Question ID : 65497835565
 Status : Not Answered
 Chosen Option : --

Q.3 दिए गए वाक्य में रेखांकित खंड को प्रतिस्थापित करने के लिए सबसे उपयुक्त विकल्प का चयन करें। यदि इसे प्रतिस्थापित करने की आवश्यकता नहीं है, तो विकल्प 'किसी बदलाव की आवश्यकता नहीं है' का चयन करें।

में गाने की कसरत कर रहा हूँ।

- Ans 1. गाने की रियाज़
 2. किसी बदलाव की आवश्यकता नहीं है।
 3. गाने कि प्रयत्न
 4. गाने कि पहल

Question ID : 65497835552
 Status : Not Answered
 Chosen Option : --

Q.4 'अतिथि की सेवा करने वाला' वाक्यांश के लिए एक शब्द होगा-

- Ans
- 1. आतिथ्य
 - 2. आतिथेयी
 - 3. अनुचर
 - 4. अतिथि

Question ID : 65497835569
Status : Not Answered
Chosen Option : --

Q.5 दिये गये वाक्य में रेखांकित अंश को प्रतिस्थापित करने के लिए सबसे उपयुक्त विकल्प का चयन करें।

तुम्हें ऐसा नहीं बोलना चाहिए।

- Ans
- 1. भूकना
 - 2. कहना
 - 3. उगलना
 - 4. चिल्लाना

Question ID : 65497835567
Status : Not Answered
Chosen Option : --

Q.6 'मन मैला करना' मुहावरे का सही अर्थ क्या है?

- Ans
- 1. ईर्ष्या करना
 - 2. दोषारोपण करना
 - 3. घृणा करना
 - 4. खिन्न होना

Question ID : 65497835571
Status : Not Answered
Chosen Option : --

Q.7 दिये गये वाक्य के किस भाग में त्रुटि है?

अब आज से इस प्रकार की गलती मत करना।

- Ans
- 1. की गलती
 - 2. मत करना।
 - 3. इस प्रकार
 - 4. अब आज से

Question ID : 65497835566
Status : Not Answered
Chosen Option : --

Q.8 निम्नलिखित में से शुद्ध वर्तनी वाला शब्द कौन सा है?

- Ans
- 1. संसारीक
 - 2. सांसारीक
 - 3. सांसारिक
 - 4. संसारिक

Question ID : 65497835564
Status : Not Answered
Chosen Option : --

Q.9 निम्नलिखित में से शुद्ध वर्तनी वाला शब्द कौन सा है?

- Ans 1. नमष्कार
 2. नमस्कार
 3. नमश्कार
 4. नमोष्कार

Question ID : 65497835563
 Status : Not Answered
 Chosen Option : --

Q.10 रिक्त स्थान को भरने के लिए सबसे उपयुक्त शब्द का चयन करें।

बन्दूक एक बहुत ही उपयोगी _____ है।

- Ans 1. वस्त्र
 2. शास्त्र
 3. शस्त्र
 4. सर्वत्र

Question ID : 65497835559
 Status : Not Answered
 Chosen Option : --

Q.11 'किसी बड़े और महत्वपूर्ण कार्य का स्मरण चिह्न या रचना' इस वाक्यांश के लिए एक सार्थक शब्द दीजिए।

- Ans 1. सम्मान
 2. यश
 3. कीर्ति
 4. श्रेय

Question ID : 65497835553
 Status : Not Answered
 Chosen Option : --

Q.12 'निर्जीव' का विलोम शब्द होगा-

- Ans 1. सजीव
 2. अजीव
 3. सहजीव
 4. सगुण

Question ID : 65497835568
 Status : Not Answered
 Chosen Option : --

Q.13 'ढेड़ चावल की खिचड़ी पकाना' इस मुहावरे के उचित अर्थ का चयन कीजिए।

- Ans 1. छोटी उम्र में अधिक ज्ञानी होना
 2. अत्यधिक आभाव होना
 3. बहुमत से अलग रहना
 4. बहुमत का सम्मन करना

Question ID : 65497835554
 Status : Not Answered
 Chosen Option : --

Q.14 रिक्त स्थान भरने के लिए सबसे उपयुक्त शब्द का चयन करें।

_____ खाना तैयार करती हैं।

- Ans
- 1. भैया
 - 2. लड़की
 - 3. बहू
 - 4. बहुएँ

Question ID : 65497835555
Status : Not Answered
Chosen Option : --

Q.15 दिए गए वाक्य का वह भाग ज्ञात करें जिसमें कोई त्रुटि है। यदि कोई त्रुटि नहीं है, तो 'कोई त्रुटि नहीं है' चुनें।

में (1)/ सप्रमाण सहित/ (2) बता रहा हूँ। (3)/ कोई त्रुटि नहीं है/ (4)

- Ans
- 1. 4
 - 2. 2
 - 3. 3
 - 4. 1

Question ID : 65497835560
Status : Not Answered
Chosen Option : --

Q.16 'श्रव्य' का विलोम शब्द होगा-

- Ans
- 1. अलौकिक
 - 2. दृश्य
 - 3. अदृश्य
 - 4. कटु

Question ID : 65497835570
Status : Not Answered
Chosen Option : --

Q.17 दिए गए वाक्य में रेखांकित खंड को प्रतिस्थापित करने के लिए सबसे उपयुक्त विकल्प का चयन करें। यदि इसे प्रतिस्थापित करने की आवश्यकता नहीं है, तो विकल्प 'किसी बदलाव की आवश्यकता नहीं है' का चयन करें।

घनी झाड़ियों के पीछे छिपकर बैठी बिल्ली कुत्ते की जाने की प्रतीक्षा करने लगी।

- Ans
- 1. कुत्ते के जाने की प्रतीक्षा करने लगी।
 - 2. किसी बदलाव की आवश्यकता नहीं है।
 - 3. कुत्ते के जाने में प्रतीक्षा करने लगे।
 - 4. कुत्ते के जाने की प्रतीक्षा करने लगा।

Question ID : 65497835562
Status : Not Answered
Chosen Option : --

Q.18 दिए गए शब्द के समानार्थी शब्द का चयन करें।

आनंद

- Ans 1. आह्लाद
 2. संस्कार
 3. संवाद
 4. पुरस्कार

Question ID : 65497835561
 Status : Not Answered
 Chosen Option : --

Q.19 रिक्त स्थान को भरने के लिए सबसे उपयुक्त शब्द का चयन करें।

क्रोध और लोभ, व्यक्ति के _____ हैं।

- Ans 1. अजातशत्रु
 2. चिर शत्रु
 3. चिरमित्र
 4. महान गुरु

Question ID : 65497835556
 Status : Not Answered
 Chosen Option : --

Q.20 दिए गए वाक्य का वह भाग ज्ञात करें जिसमें कोई त्रुटि है। यदि कोई त्रुटि नहीं है, तो 'कोई त्रुटि नहीं है' चुनें।

किसी भी भाषा की (1)/ वर्तनी सबसे अधिक (2)/ महत्व की चीज है (3)/ कोई त्रुटि नहीं है (4)

- Ans 1. 4
 2. 3
 3. 2
 4. 1

Question ID : 65497835557
 Status : Not Answered
 Chosen Option : --

Comprehension:

शंका नैराश्य का लक्षण नहीं, आशा का ही स्रोत है। असल में जिन चीजों के बारे में हमें (1)_____ नहीं होती, उनकी असलियत तक पहुँचना भी हमारे लिए दुश्वार होता है। शंका मनुष्य को (2)_____ रहती है, शंका कठिनाई के भीतर से चलकर (3)_____ तक पहुँचने की राह है। शंका को सही बिंदु से देखकर उसका (4)_____ खोजने की कोशिश करना विद्वता की सबसे बड़ी पहचान है। विश्वास की अंधता में सो जाने की अपेक्षा शंका के (5)_____ पर चलते रहना धर्म की कहीं बड़ी पहचान है।

निम्न प्रश्नों के उत्तर उपरोक्त गद्यांश के आधार पर दीजिए।

SubQuestion No : 21

Q.21 गद्यांश के रिक्त स्थान (1) के लिए सर्वाधिक उपयुक्त शब्द होगा-

- Ans 1. चिंता
 2. ईर्ष्या
 3. शंका
 4. लज्जा

Question ID : 65497835573
 Status : Not Answered
 Chosen Option : --

Comprehension:

शंका नैराश्य का लक्षण नहीं, आशा का ही स्रोत है। असल में जिन चीजों के बारे में हमें (1)_____ नहीं होती, उनकी असलियत तक पहुँचना भी हमारे लिए दुश्वार होता है। शंका मनुष्य को (2)_____ रहती है, शंका कठिनाई के भीतर से चलकर (3)_____ तक पहुँचने की राह है। शंका को सही बिंदु से देखकर उसका (4)_____ खोजने की कोशिश करना विद्वता की सबसे बड़ी पहचान है। विश्वास की अंधता में सो जाने की अपेक्षा शंका के (5)_____ पर चलते रहना धर्म की कहीं बड़ी पहचान है।

निम्न प्रश्नों के उत्तर उपरोक्त गद्यांश के आधार पर दीजिए।

SubQuestion No : 22

Q.22 गद्यांश के रिक्त स्थान (2) के लिए सर्वाधिक उपयुक्त शब्द होगा-

- Ans 1. जलाये
 2. भगाये
 3. जगाये
 4. सुलाये

Question ID : 65497835574
 Status : Not Answered
 Chosen Option : --

Comprehension:

शंका नैराश्य का लक्षण नहीं, आशा का ही स्रोत है। असल में जिन चीजों के बारे में हमें (1)_____ नहीं होती, उनकी असलियत तक पहुँचना भी हमारे लिए दुश्वार होता है। शंका मनुष्य को (2)_____ रहती है, शंका कठिनाई के भीतर से चलकर (3)_____ तक पहुँचने की राह है। शंका को सही बिंदु से देखकर उसका (4)_____ खोजने की कोशिश करना विद्वता की सबसे बड़ी पहचान है। विश्वास की अंधता में सो जाने की अपेक्षा शंका के (5)_____ पर चलते रहना धर्म की कहीं बड़ी पहचान है।

निम्न प्रश्नों के उत्तर उपरोक्त गद्यांश के आधार पर दीजिए।

SubQuestion No : 23

Q.23 गद्यांश के रिक्त स्थान (3) के लिए सर्वाधिक उपयुक्त शब्द होगा-

- Ans 1. निर्णय
 2. साधन
 3. सत्य
 4. लक्ष्य

Question ID : 65497835575
 Status : Not Answered
 Chosen Option : --

Comprehension:

शंका नैराश्य का लक्षण नहीं, आशा का ही स्रोत है। असल में जिन चीजों के बारे में हमें (1)_____ नहीं होती, उनकी असलियत तक पहुँचना भी हमारे लिए दुश्वार होता है। शंका मनुष्य को (2)_____ रहती है, शंका कठिनाई के भीतर से चलकर (3)_____ तक पहुँचने की राह है। शंका को सही बिंदु से देखकर उसका (4)_____ खोजने की कोशिश करना विद्वता की सबसे बड़ी पहचान है। विश्वास की अंधता में सो जाने की अपेक्षा शंका के (5)_____ पर चलते रहना धर्म की कहीं बड़ी पहचान है।

निम्न प्रश्नों के उत्तर उपरोक्त गद्यांश के आधार पर दीजिए।

SubQuestion No : 24

Q.24 गद्यांश के रिक्त स्थान (4) के लिए सर्वाधिक उपयुक्त शब्द होगा-

- Ans 1. अवदान
 2. समाधान
 3. प्रभाव
 4. परिणाम

Question ID : 65497835576
 Status : Not Answered
 Chosen Option : --

Comprehension:

शंका नैराश्य का लक्षण नहीं, आशा का ही स्रोत है। असल में जिन चीजों के बारे में हमें (1)_____ नहीं होती, उनकी असलियत तक पहुंचना भी हमारे लिए दुश्वार होता है। शंका मनुष्य को (2)_____ रहती है, शंका कठिनाई के भीतर से चलकर (3)_____ तक पहुंचने की राह है। शंका को सही बिंदु से देखकर उसका (4)_____ खोजने की कोशिश करना विद्वता की सबसे बड़ी पहचान है। विश्वास की अंधता में सो जाने की अपेक्षा शंका के (5)_____ पर चलते रहना धर्म की कहीं बड़ी पहचान है।

निम्न प्रश्नों के उत्तर उपरोक्त गद्यांश के आधार पर दीजिए।

SubQuestion No : 25

Q.25 गद्यांश के रिक्त स्थान (5) के लिए सर्वाधिक उपयुक्त शब्द होगा-

- Ans
- 1. फूल
 - 2. धूल
 - 3. शरीर
 - 4. शूल

Question ID : 65497835577

Status : Not Answered

Chosen Option : --

KD Job Updates

Exam Date	17/11/2021
Exam Time :	4:00 PM - 5:30 PM
Subject	Constable GD 2021

Section : Part A General Intelligence and Reasoning

Q.1 What is the difference between the compound interest on ₹40,000 at 20% per annum compounded half-yearly and compounded quarterly for a period of one year?

- Ans
- 1. ₹320.25
 - 2. ₹8,400
 - 3. ₹8,620.25
 - 4. ₹220.25

Question ID : 65497832156

Status : Answered

Chosen Option : 1

Q.2 'P × Q' means 'P is the wife of Q'. 'P + Q' means 'P is the father of Q'. 'P ÷ Q' means 'P is the daughter of Q'. 'P - Q' means 'P is the son of Q'. How is E related to I in the expression 'E ÷ F + G - H ÷ I'?

- Ans
- 1. Daughter-in-law
 - 2. Sister
 - 3. Granddaughter
 - 4. Grandson

Question ID : 65497832173

Status : Answered

Chosen Option : 3

Q.3 Select the correct option that indicates the arrangement of the given words in the order in which they appear in an English dictionary.

1. Manager
2. Manicure
3. Manner
4. Mammal
5. Mandible

- Ans
- 1. 3, 4, 2, 1, 5
 - 2. 4, 1, 5, 2, 3
 - 3. 1, 4, 5, 2, 3
 - 4. 4, 1, 5, 3, 2

Question ID : 65497832149

Status : Answered

Chosen Option : 2

Q.4 Select the combination of letters that when sequentially placed in the blanks of the given series will complete the series.

T _ D S _ R _ S T R D _ T _ D S _ R _ S

- Ans
- 1. R T D T R D T
 - 2. D T D S S T
 - 3. R T D S R T D
 - 4. D T R S R T D

Question ID : 65497832150
 Status : Answered
 Chosen Option : 3

Q.5 Select the letter-cluster from among the given options that can replace the question mark (?) in the following series.

BFI, EIL, HLO, KOR, ?

- Ans
- 1. HNM
 - 2. QSV
 - 3. LPS
 - 4. NRU

Question ID : 65497832167
 Status : Answered
 Chosen Option : 4

Q.6 Six people, F, G, H, I, J and K, are standing opposite to each other in a circle, facing towards the centre. F and G are adjacent to each other. F and K are opposite to each other. H is opposite to I. J is opposite to G. K is second to the left of H. Who is standing between F and I?

- Ans
- 1. K
 - 2. J
 - 3. H
 - 4. G

Question ID : 65497832169
 Status : Answered
 Chosen Option : 4

Q.7 Study the given pattern carefully and select the number that can replace the question mark (?) in it.

15 30 33
 16 26 19
 62 122 ?

- Ans
- 1. 124
 - 2. 128
 - 3. 117
 - 4. 104

Question ID : 65497832155
 Status : Answered
 Chosen Option : 4

Q.8 In a certain code language, HIDDEN is written as IJECDM. How will FELLOW be written as in that language?

- Ans
- 1. EDKGNU
 - 2. EDKMPZ
 - 3. GFMPZ
 - 4. GFMKNV

Question ID : 65497832153
Status : Answered
Chosen Option : 4

Q.9 Four letter-clusters have been given, out of which three are alike in some manner and one is different. Select the letter-cluster that is different.

- Ans
- 1. YUSR
 - 2. GDBA
 - 3. IFDC
 - 4. ZWUT

Question ID : 65497832163
Status : Answered
Chosen Option : 1

Q.10 Select the number from among the given options that can replace the question mark (?) in the following series.

128, 109, ?, 77, 64, 53, 44

- Ans
- 1. 88
 - 2. 81
 - 3. 92
 - 4. 100

Question ID : 65497832151
Status : Answered
Chosen Option : 3

Q.11 In a certain code language, 'TWO' is coded as '3' and 'FIVE' is coded as '4'. How will 'EIGHT' be coded in that language?

- Ans
- 1. 7
 - 2. 9
 - 3. 5
 - 4. 8

Question ID : 65497832164
Status : Answered
Chosen Option : 3

Q.12 Eleven people are sitting across a rectangular table. Four persons are sitting on each longest side of the table. Boss is sitting alone at one side of the table. N and O are sitting beside each other on one of the shortest side of table. H is sitting opposite to E and between G and N. A is sitting opposite to C and between M and D. B is opposite to D and between C and G. F is sitting opposite to G. Who among them is a Boss?

- Ans
- 1. F
 - 2. M
 - 3. A
 - 4. G

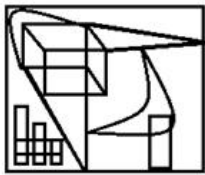
Question ID : 65497832158
 Status : Answered
 Chosen Option : 2

Q.13 'Printer' is related to 'Hardware' in the same way as 'Web Browser' is related to '_____'.

- Ans
- 1. Google Chrome
 - 2. Software
 - 3. Windows
 - 4. Operating System

Question ID : 65497832168
 Status : Answered
 Chosen Option : 2

Q.14 Select the option that is embedded in the given figure (rotation is NOT allowed).



- Ans
- 1.
 - 2.
 - 3.
 - 4.

Question ID : 65497832162
 Status : Answered
 Chosen Option : 1

Q.15 Read the given statements and conclusions carefully. Assuming that the information given in the statements is true, even if it appears to be at variance with commonly known facts, decide which of the given conclusions logically follow(s) from the statements.

Statements:

1. All flowers are tulips.
2. No tulips are whites.

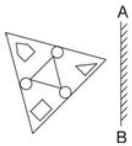
Conclusions:

- I. All tulips are flowers.
- II. Some tulips are whites.

- Ans** 1. Neither conclusion I nor conclusion II follows.
 2. Both the conclusions follow.
 3. Only conclusion II follows.
 4. Only conclusion I follows.

Question ID : 65497832154
 Status : Answered
 Chosen Option : 1

Q.16 Select the correct mirror image of the given figure when the mirror is placed at 'AB' as shown.

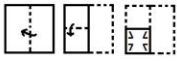


Ans

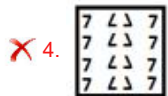


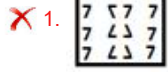
- 1.
- 2.
- 3.
- 4.

Question ID : 65497832166
 Status : Answered
 Chosen Option : 4

Q.17 The sequence of folding a piece of paper and the manner in which the folded paper has been cut is shown in the following figures. How would this paper look when unfolded?



Ans



Question ID : 65497832157

Status : Answered

Chosen Option : 3

Q.18 Select the number from among the given options that can replace the question mark (?) in the following series.

37, 41, 50, 66, ?

Ans 1. 101

2. 91

3. 85

4. 97

Question ID : 65497832165

Status : Answered

Chosen Option : 2

Q.19 Select the option that is related to the third number in the same way as the second number is related to the first number.

15 : 231 :: 16 : ?

Ans 1. 251

2. 256

3. 260

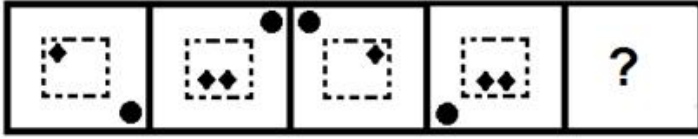
4. 262

Question ID : 65497832159

Status : Answered

Chosen Option : 4

Q.20 Select the figure that will come next in the following figure series.



Ans

- 1.
- 2.
- 3.
- 4.

Question ID : 65497832152
 Status : Answered
 Chosen Option : 3

Q.21 Select the option that is related to the third letter-cluster in the same way as the second letter-cluster is related to the first letter-cluster.

FEW : GYH :: YOU : ?

- 1. QAW
- 2. WQA
- 3. QWA
- 4. AQW

Question ID : 65497832171
 Status : Answered
 Chosen Option : 3

Q.22 If 'P' denotes 'addition', 'D' denotes 'subtraction', 'S' denotes 'multiplication', and 'V' denotes 'division', then what will be the value of the following expression?

15 S 2 P 2 (11 S 2) D 75 V 15 D 4 (9 S 4)

- 1. -75
- 2. 75
- 3. 85
- 4. -85

Question ID : 65497832160
 Status : Answered
 Chosen Option : 1

Q.23 If 'white' is called 'black', 'black' is called 'grey', 'grey' is called 'red', 'red' is called 'green', 'green' is called 'blue' and 'blue' is called 'yellow', then what will be the colour of 'Stop' signal light?

- Ans
- 1. Blue
 - 2. Green
 - 3. Grey
 - 4. Yellow

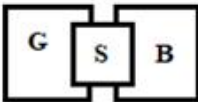
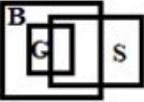
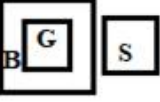

Question ID : 65497832172
 Status : Answered
 Chosen Option : 2

Q.24 Select the Venn diagram that best represents the relationship between the following classes.

Girls, Boys, Students

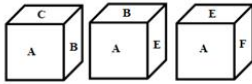
(G: Girls; B: Boys; S: Students)

Ans

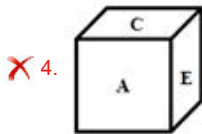
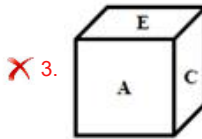
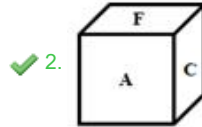
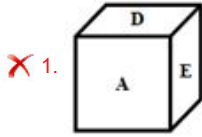
- 1. 
- 2. 
- 3. 
- 4. 

Question ID : 65497832170
 Status : Answered
 Chosen Option : 1

Q.25 A dice is thrown three times. Its different positions are as shown. Select its next possible position from the given options.



Ans



Question ID : 65497832161
 Status : Answered
 Chosen Option : 2

Section : Part B General Knowledge and General Awareness

Q.1 Which of the following states is associated with the dance drama folk theatre form 'Yakshagana'?

- Ans ✓ 1. Karnataka
 ✗ 2. Andhra Pradesh
 ✗ 3. Telangana
 ✗ 4. Kerala

Question ID : 65497832181
 Status : Answered
 Chosen Option : 1

Q.2 A sphygmomanometer is used to measure which of the following?

- Ans ✗ 1. Electric current
 ✗ 2. Humidity
 ✗ 3. Wind
 ✓ 4. Blood pressure

Question ID : 65497832182
 Status : Answered
 Chosen Option : 2

Q.3 Which of the following chemicals is used to cause artificial rain (cloud seeding)?

- Ans 1. Hydrogen bromide
 2. Silver iodide
 3. Silver oxide
 4. Aluminium sulphide

Question ID : 65497832183
Status : Answered
Chosen Option : 1

Q.4 Which of the following statements is NOT true regarding 'Spring tides'?

- Ans 1. These tides are the highest.
 2. These tides are the lowest.
 3. These tides occur on new moon days.
 4. These tides occur during full moon days.

Question ID : 65497832193
Status : Answered
Chosen Option : 2

Q.5 Besides banks, the other formal major source of cheap credit in rural areas, are:

- Ans 1. money lenders
 2. zamindars
 3. the cooperative societies
 4. friends and relatives

Question ID : 65497832192
Status : Answered
Chosen Option : 1

Q.6 Jwala Gutta is an Indian professional _____ player.

- Ans 1. football
 2. table tennis
 3. tennis
 4. badminton

Question ID : 65497832189
Status : Answered
Chosen Option : 2

Q.7 _____ became the first Indian to win a singles match at the US Open in seven years in September 2020.

- Ans 1. Sumit Nagal
 2. Purav Raja
 3. Divij Sharan
 4. Yuki Bhambri

Question ID : 65497832177
Status : Answered
Chosen Option : 1

Q.8 Babur defeated Ibrahim Lodi and captured Delhi and Agra in the year ____.

- Ans 1. 1526
 2. 1694
 3. 1467
 4. 1372

Question ID : 65497832195
Status : Answered
Chosen Option : 1

Q.9 Who among the following cricketers won the Orange Cap in the Indian Premier League (IPL) 2020?

- Ans 1. KL Rahul
 2. Jimmy Neesham
 3. Virat Kohli
 4. MS Dhoni

Question ID : 65497832194
Status : Answered
Chosen Option : 1

Q.10 When is the Indian Armed Forces Veterans Day observed annually?

- Ans 1. 15 July
 2. 5 December
 3. 14 January
 4. 26 October

Question ID : 65497832191
Status : Answered
Chosen Option : 1

Q.11 The Battle of Kohima was fought in 1944 between:

- Ans 1. Japanese forces and Communist Chinese forces
 2. Royal Burmese Army and British Indian Army
 3. Imperial Japanese forces and British Indian forces
 4. Chinese forces and British Indian forces

Question ID : 65497832180
Status : Answered
Chosen Option : 3

Q.12 Which of the following states announced the setting up of a 'Gau Cabinet' in November 2020 for the protection and promotion of cattle?

- Ans 1. Uttar Pradesh
 2. Chhattisgarh
 3. Madhya Pradesh
 4. Bihar

Question ID : 65497832198
Status : Answered
Chosen Option : 1

Q.13 Who among the following won the Men's Singles event at the US Open 2020?

- Ans 1. Alexander Zverev
 2. Novak Djokovic
 3. Dominic Thiem
 4. Bruno Soares

Question ID : 65497832174
Status : Answered
Chosen Option : 2

Q.14 _____ tax is imposed on transactions that have a negative externality; for example, pollution.

- Ans 1. Tobin
 2. Pigovian
 3. Customs
 4. CTT

Question ID : 65497832185
Status : Answered
Chosen Option : 2

Q.15 Mahashay Dharampal Gulati, who passed away in December 2020, was the owner of iconic spice brand _____.

- Ans 1. Badshah
 2. MDH
 3. Everest
 4. Catch

Question ID : 65497832188
Status : Answered
Chosen Option : 2

Q.16 Which among the following terms denotes to the hilly parts of the Karnataka plateau?

- Ans 1. Buggyals
 2. Terai
 3. Malnad
 4. Bets

Question ID : 65497832187
Status : Answered
Chosen Option : 3

Q.17 The book 'Kashmir's Untold Story: Declassified' was written by:

- Ans 1. Iqbal Chand Malhotra and Maroof Raza
 2. C Uday Bhaskar and GD Bakshi
 3. Karan Thapar and Shobhaa De
 4. Nandita Haksar and Arundhati Roy

Question ID : 65497832184
Status : Answered
Chosen Option : 2

Q.18 The last Mughal Emperor Bahadur Shah Zafar was imprisoned in Rangoon jail by the British in the year _____.

- Ans
- 1. 1885
 - 2. 1858
 - 3. 1826
 - 4. 1862

Question ID : 65497832196
 Status : Answered
 Chosen Option : 2

Q.19 As per Census 2011 which one of the following states does NOT fall in the Empowered Action Group (EAG) states?

- Ans
- 1. Rajasthan
 - 2. Jharkhand
 - 3. Bihar
 - 4. Punjab

Question ID : 65497832178
 Status : Not Answered
 Chosen Option : --

Q.20 Which of the following dynasties was NOT a part of the Delhi Sultanate?

- Ans
- 1. Lodhi
 - 2. Khilji
 - 3. Sur
 - 4. Slave

Question ID : 65497832176
 Status : Answered
 Chosen Option : 3

Q.21 When did the Transgender Persons (Protection of Rights) Act, 2019 come into effect?

- Ans
- 1. June 2020
 - 2. December 2019
 - 3. January 2020
 - 4. March 2020

Question ID : 65497832190
 Status : Answered
 Chosen Option : 3

Q.22 In which of the following years was the Buddhist Chanting of Ladakh included in the UNESCO'S list of intangible cultural heritage?

- Ans
- 1. 2014
 - 2. 2012
 - 3. 2016
 - 4. 2013

Question ID : 65497832186
 Status : Not Answered
 Chosen Option : --

Q.23 The National Commission for Backward Classes Act, 1993, was repealed by The National Commission for Backward Classes (Repeal) Act in the year _____.

- Ans
- 1. 2019
 - 2. 2018
 - 3. 2017
 - 4. 2016

Question ID : 65497832197
 Status : Answered
 Chosen Option : 1

Q.24 What is the dominant substance that makes up the hair, nails and the top layer of skin in the human body?

- Ans
- 1. Laminin
 - 2. Collagen
 - 3. Keratin
 - 4. F bronectin

Question ID : 65497832175
 Status : Answered
 Chosen Option : 3

Q.25 The statutory power for exchange control was provided to Reserve Bank of India by the Foreign Exchange Regulation Act (FERA) of _____, which was subsequently replaced by a more comprehensive Foreign Exchange Regulation Act, 1973.

- Ans
- 1. 1953
 - 2. 1947
 - 3. 1967
 - 4. 1963

Question ID : 65497832179
 Status : Answered
 Chosen Option : 1

Section : Part C Elementary Mathematics

Q.1 If the height of a right circular cone is 24 m and its slant height is 30 m, then what is the area of its curved surface?

(Use $\pi = \frac{22}{7}$)

- Ans
- 1. 1697.143 m²
 - 2. 1377.423 m²
 - 3. 1778.654 m²
 - 4. 1267.435 m²

Question ID : 65497832220
 Status : Answered
 Chosen Option : 1

Q.2 By selling an article for ₹254.38, there is a gain of 10.6%. If it is sold for ₹224.25, then the loss/gain percentage will be:

- Ans**
- ✓ 1. loss, 2.5%
 - ✗ 2. gain, 2.5%
 - ✗ 3. gain, 5%
 - ✗ 4. loss, 5%

Question ID : 65497832222
 Status : Answered
 Chosen Option : 1

Q.3 The average of seven consecutive positive integers is 259. If the next five odd numbers are included, then what is the average of all the numbers (correct to two decimal places)?

- Ans**
- ✗ 1. 260.74
 - ✗ 2. 259.68
 - ✓ 3. 262.33
 - ✗ 4. 267.89

Question ID : 65497832206
 Status : Answered
 Chosen Option : 3

Q.4 If the number 6523678pq is divisible by 99, the missing digits p and q are:

- Ans**
- ✗ 1. p = 4, q = 4
 - ✗ 2. p = 6, q = 2
 - ✓ 3. p = 2, q = 6
 - ✗ 4. p = 3, q = 5

Question ID : 65497832205
 Status : Answered
 Chosen Option : 2

Q.5 What is the difference between the compound interest on ₹3,000 for 1 year at 5% per annum compounded yearly and that compounded half-yearly?

- Ans**
- ✗ 1. ₹ $1\frac{22}{25}$
 - ✓ 2. ₹ $1\frac{7}{8}$
 - ✗ 3. ₹ $1\frac{13}{15}$
 - ✗ 4. ₹ $1\frac{6}{7}$

Question ID : 65497832219
 Status : Answered
 Chosen Option : 2

Q.6 The value of $3 \times 4 \div 3$ of $24 - 3 \div 2 \times (3 - 4) \times 2 + 6 \div 4$ of 3 is:

- Ans**
- 1. $-3\frac{2}{3}$
 - 2. $2\frac{1}{3}$
 - 3. $-2\frac{1}{3}$
 - 4. $3\frac{2}{3}$

Question ID : 65497832221
 Status : Answered
 Chosen Option : 4

Q.7 The ratio of the number of men and women in a company is 5 : 4. If the number of men and women increase by 16% and 15%, respectively, then what will be the new ratio of men and women?

- Ans**
- 1. 29 : 33
 - 2. 29 : 23
 - 3. 33 : 29
 - 4. 23 : 29

Question ID : 65497832218
 Status : Answered
 Chosen Option : 2

Q.8 A, B and C can complete a work in 60, 30 and 20 days, respectively. In how many days can A complete the work if he is assisted by B and C together on every fifth day?

- Ans**
- 1. 25
 - 2. 30
 - 3. 15
 - 4. 35

Question ID : 65497832215
 Status : Answered
 Chosen Option : 2

Q.9 Two numbers X and Y are such that the sum of 3% of X and 2% of Y is two-third of the sum of 2% of X and 6% of Y. The ratio of three times of X to two times of Y is:

- Ans**
- 1. 4 : 3
 - 2. 5 : 9
 - 3. 3 : 4
 - 4. 9 : 5

Question ID : 65497832204
 Status : Answered
 Chosen Option : 4

Q.10 If 80% of $\frac{3}{4}$ of a number is 63, then the number is:

- Ans**
- 1. 105
 - 2. 95
 - 3. 115
 - 4. 110

Question ID : 65497832214
Status : Answered
Chosen Option : 1

Q.11 If a 10-digit number $643x1145y2$ is divisible by 88, then the value of $(2x - 3y)$ for the largest value of y is:

- Ans**
- 1. 15
 - 2. 27
 - 3. -15
 - 4. -27

Question ID : 65497832203
Status : Answered
Chosen Option : 4

Q.12 Akhil drives a car from his home to office at an average speed of 50 km/h and reaches office 10 minutes early. But one day due to some problem with the car, he could drive at an average speed of 30 km/h only and reached office 10 minutes late. How far is his office from home?

- Ans**
- 1. 37.5 km
 - 2. 30 km
 - 3. 25 km
 - 4. 12.5 km

Question ID : 65497832202
Status : Answered
Chosen Option : 3

Q.13 When x is subtracted from each of 43, 38, 11 and 10, then the numbers so obtained in this order are in proportion. What is the mean proportional between $(11x + 3)$ and $(9x - 2)$?

- Ans**
- 1. 35
 - 2. 25
 - 3. 30
 - 4. 20

Question ID : 65497832207
Status : Answered
Chosen Option : 3

Q.14 Rameshwar deposited a part of ₹3,28,000 in a bank in the name of his daughter aged 18 years, and the balance in the name of his son aged 19 years in such a way that they both receive equal amounts when they become 21 years of age. If the bank gives compound interest at 5% per annum, then how much did he invest in the name of his daughter?

- Ans**
- 1. ₹1,57,000
 - 2. ₹1,58,000
 - 3. ₹1,60,000
 - 4. ₹1,56,000

Question ID : 65497832200
Status : Answered
Chosen Option : 2

Q.15 During a flight of 900 km, an aircraft was slowed down due to bad weather. Its average speed for the trip was reduced by 300 km/h and the time of flight increased by 30 min. The original duration of the flight was:

- Ans**
- 1. 3 h
 - 2. 3/2 h
 - 3. 2 h
 - 4. 1 h

Question ID : 65497832216
Status : Answered
Chosen Option : 4

Q.16 What number must be added to each of the numbers 15, 9 and 5 so that the resulting numbers may be in a continued proportion?

- Ans**
- 1. 5
 - 2. 4
 - 3. 3
 - 4. 2

Question ID : 65497832210
Status : Answered
Chosen Option : 3

Q.17 By selling 40 dozen bananas for ₹1,440, a man gains 20%. In order to gain 30%, for how much should he sell 20 dozen bananas?

- Ans**
- 1. ₹780
 - 2. ₹1,560
 - 3. ₹936
 - 4. ₹720

Question ID : 65497832199
Status : Answered
Chosen Option : 1

Q.18 The amount obtained by investing a certain sum at $r\%$ p.a. for 3 years at simple interest is equal to the simple interest on the same sum at the same rate for 19 years. What is the value of r ?

- Ans**
- 1. 6.25
 - 2. 5.75
 - 3. 4
 - 4. 8

Question ID : 65497832208
Status : Answered
Chosen Option : 1

Q.19 If the selling price of an article is ₹900 and the discount is 40%, then find its marked price (in ₹).

- Ans**
- 1. 1,200
 - 2. 1,500
 - 3. 1,600
 - 4. 800

Question ID : 65497832213
Status : Answered
Chosen Option : 2

Q.20 The area of the floor of a cubical room is 192 m^2 . The length of the longest rod that can be kept in that room is:

- Ans**
- 1. 18 m
 - 2. 22 m
 - 3. 24 m
 - 4. 26 m

Question ID : 65497832211
Status : Answered
Chosen Option : 3

Q.21 The average weight of 6 persons increases by 1.5 kg when a new person comes in place of one of them who was weighing 65 kg. What is the weight of the new person?

- Ans**
- 1. 66.5 kg
 - 2. 74 kg
 - 3. 76 kg
 - 4. 75.5 kg

Question ID : 65497832212
Status : Answered
Chosen Option : 2

Q.22 Pipes A and B can empty a full tank in 16 hours and 24 hours, respectively. Pipe C alone can fill the empty tank in 4 hours. If A, B and C are opened together, the tank will be 35% full after:

- Ans
- 1. $3\frac{1}{5}$ hours
 - 2. $3\frac{2}{5}$ hours
 - 3. $2\frac{2}{5}$ hours
 - 4. $2\frac{1}{5}$ hours

Question ID : 65497832223
 Status : Answered
 Chosen Option : 3

Q.23 Simplify the following expression.

$$\frac{312 \div 26 + 60 \div (42 - 55 \text{ of } 4 \div 10) \times 2}{9 + (12 - 2 \text{ of } 4)}$$

- Ans
- 1. $\frac{6}{169}$
 - 2. $1\frac{1}{26}$
 - 3. $-\frac{144}{169}$
 - 4. $1\frac{5}{13}$

Question ID : 65497832201
 Status : Answered
 Chosen Option : 4

Q.24 A trader purchased 360 packets of pencils at the rate of ₹15 per packet. He sold 60% of the packets at the rate of ₹18 per packet and the remaining packets at the rate of ₹20 per packet. What is his gain per cent (up to one decimal place) in this transaction?

- Ans
- 1. 25.5
 - 2. 25.3
 - 3. 25.2
 - 4. 25.4

Question ID : 65497832217
 Status : Answered
 Chosen Option : 2

Q.25 Two successive discounts, with the first being 10%, were given on an article having the marked price of ₹7,500. Finally, it was sold for ₹5,805. What per cent was the second discount?

- Ans
- 1. 12%
 - 2. 15%
 - 3. 16%
 - 4. 14%

Question ID : 65497832209
 Status : Answered
 Chosen Option : 4

Section : Part D English

Q.1 The following sentence has been divided into parts. One of them may contain an error. Select the part that contains the error from the given options. If you don't find any error, mark 'No error' as your answer.

Please let me know / whether you decide / to come with me.

- Ans
- 1. to come with me
 - 2. Please let me know
 - 3. whether you decide
 - 4. No error

Question ID : 65497832224
Status : Answered
Chosen Option : 3

Q.2 Select the most appropriate option to fill in the blank.

His condition was so critical that a senior doctor _____ performed the operation.

- Ans
- 1. yourself
 - 2. myself
 - 3. itself
 - 4. himself

Question ID : 65497832234
Status : Answered
Chosen Option : 4

Q.3 Select the most appropriate ANTONYM of the given word.

Detest

- Ans
- 1. Abhor
 - 2. Adore
 - 3. Reject
 - 4. Hate

Question ID : 65497832225
Status : Answered
Chosen Option : 2

Q.4 Select the most appropriate synonym of the given word.

Cruel

- Ans
- 1. Polite
 - 2. Easy
 - 3. Mild
 - 4. Brutal

Question ID : 65497832229
Status : Answered
Chosen Option : 4

Q.5 Select the option that can be used as a one-word substitute for the given group of words.

A large number of fish swimming together

- Ans
- 1. Gaggle
 - 2. Herd
 - 3. Pride
 - 4. Shoal

Question ID : 65497832243
Status : Answered
Chosen Option : 1

Q.6 Select the most appropriate ANTONYM of the given word.

Hesitate

- Ans
- 1. Falter
 - 2. Advance
 - 3. Delay
 - 4. Waver

Question ID : 65497832237
Status : Answered
Chosen Option : 2

Q.7 Select the INCORRECTLY spelt word.

- Ans
- 1. Robbery
 - 2. Rotten
 - 3. Rotate
 - 4. Round

Question ID : 65497832227
Status : Answered
Chosen Option : 1

Q.8 Select the most appropriate option that can substitute the underlined segment in the given sentence. If there is no need to substitute it, select 'No substitution required'.

The old man was too weak that he couldn't climb the stairs.

- Ans
- 1. so weak to
 - 2. No substitution required
 - 3. very weak to
 - 4. too weak to

Question ID : 65497832239
Status : Answered
Chosen Option : 4

Q.9 Select the most appropriate option to fill in the blank.

Music is helpful in improving the _____ of students.

- Ans 1. attraction
 2. concentration
 3. transfiguration
 4. solution

Question ID : 65497832231
Status : Answered
Chosen Option : 2

Q.10 Select the option that can be used as a one-word substitute for the given group of words.

Break or fall apart into small fragments in the process of deterioration

- Ans 1. Collapse
 2. Slump
 3. Sag
 4. Crumble

Question ID : 65497832226
Status : Answered
Chosen Option : 1

Q.11 Select the most appropriate synonym of the given word.

Plead

- Ans 1. Request
 2. Repeat
 3. Refuse
 4. Reply

Question ID : 65497832242
Status : Answered
Chosen Option : 1

Q.12 The following sentence has been split into four segments. Identify the segment that contains a grammatical error.

Shilpi has / a keen interest / of learning / a foreign language.

- Ans 1. a foreign language
 2. of learning
 3. a keen interest
 4. Shilpi has

Question ID : 65497832241
Status : Answered
Chosen Option : 2

Q.13 Select the most appropriate option that can substitute the underlined segment in the given sentence. If there is no need to substitute it, select 'No substitution required'.

The inmates of the house are sleep when the thief entered.

- Ans
- 1. No substitution required
 - 2. were sleep
 - 3. are sleeping
 - 4. were sleeping

Question ID : 65497832230
Status : Answered
Chosen Option : 4

Q.14 Select the most appropriate meaning of the given idiom.

To break new ground

- Ans
- 1. To look for a new building
 - 2. To innovate or pioneer
 - 3. To disturb or interrupt
 - 4. To start digging somewhere else

Question ID : 65497832236
Status : Answered
Chosen Option : 2

Q.15 Select the correctly spelt word.

- Ans
- 1. Precipitation
 - 2. Labaling
 - 3. Procedure
 - 4. Precoutions

Question ID : 65497832233
Status : Answered
Chosen Option : 3

Q.16 Select the option that can be used as a substitute for the given group of words.

Hair of animals, which is soft and used for making wool

- Ans
- 1. Bristles
 - 2. Kenosis
 - 3. Fur
 - 4. Grizzly hair

Question ID : 65497832235
Status : Answered
Chosen Option : 3

Q.17 Select the most appropriate meaning of the given idiom.

To break into tears

- Ans 1. To cry suddenly
 2. To fidget
 3. To panic
 4. To be afraid of

Question ID : 65497832232

Status : Answered

Chosen Option : 1

Q.18 Select the most appropriate option that can substitute the underlined segment in the given sentence. If there is no need to substitute it, select 'No substitution required'.

Molly Yvonne didn't know what to do. She was torn apart with conflicting emotions.

- Ans 1. For
 2. In
 3. No substitution required
 4. By

Question ID : 65497832240

Status : Answered

Chosen Option : 4

Q.19 The following sentence has been divided into parts. One of them may contain an error. Select the part that contains the error from the given options. If you don't find any error, mark 'No error' as your answer.

Kavya didn't wanted / any help / in painting.

- Ans 1. Kavya didn't wanted
 2. in painting
 3. any help
 4. No error

Question ID : 65497832228

Status : Answered

Chosen Option : 1

Q.20 Select the most appropriate option to fill in the blank.

The teacher asked us to write our answers _____.

- Ans 1. laudably
 2. latently
 3. legibly
 4. laughably

Question ID : 65497832238

Status : Answered

Chosen Option : 3

Comprehension:

In the following passage, some words have been deleted. Read the passage carefully and select the most appropriate option to fill in each blank.

Once, a man and his son were going into town. (1) _____ wanted to sell some potatoes. They went with (2) _____ donkey, and the donkey (3) _____ the potatoes. While they walked, (4) _____ man came past on a horse. "Shame (5) _____ you!" he said. "Why do you have a donkey, but you don't ride it?"

SubQuestion No : 21

Q.21 Select the most appropriate option to fill in blank number 1.

- Ans 1. They
 2. He
 3. Who
 4. It

Question ID : 65497832245
 Status : Answered
 Chosen Option : 1

Comprehension:

In the following passage, some words have been deleted. Read the passage carefully and select the most appropriate option to fill in each blank.

Once, a man and his son were going into town. (1) _____ wanted to sell some potatoes. They went with (2) _____ donkey, and the donkey (3) _____ the potatoes. While they walked, (4) _____ man came past on a horse. "Shame (5) _____ you!" he said. "Why do you have a donkey, but you don't ride it?"

SubQuestion No : 22

Q.22 Select the most appropriate option to fill in blank number 2.

- Ans 1. one
 2. own
 3. his
 4. their

Question ID : 65497832246
 Status : Answered
 Chosen Option : 4

Comprehension:

In the following passage, some words have been deleted. Read the passage carefully and select the most appropriate option to fill in each blank.

Once, a man and his son were going into town. (1) _____ wanted to sell some potatoes. They went with (2) _____ donkey, and the donkey (3) _____ the potatoes. While they walked, (4) _____ man came past on a horse. "Shame (5) _____ you!" he said. "Why do you have a donkey, but you don't ride it?"

SubQuestion No : 23

Q.23 Select the most appropriate option to fill in blank number 3.

- Ans 1. weighed
 2. carried
 3. sold
 4. loaded

Question ID : 65497832247
 Status : Answered
 Chosen Option : 2

Comprehension:

In the following passage, some words have been deleted. Read the passage carefully and select the most appropriate option to fill in each blank.

Once, a man and his son were going into town. (1) _____ wanted to sell some potatoes. They went with (2) _____ donkey, and the donkey (3) _____ the potatoes. While they walked, (4) _____ man came past on a horse. "Shame (5) _____ you!" he said. "Why do you have a donkey, but you don't ride it?"

SubQuestion No : 24

Q.24 Select the most appropriate option to fill in blank number 4.

- Ans 1. same
 2. some
 3. other
 4. a

Question ID : 65497832248

Status : Answered

Chosen Option : 4

Comprehension:

In the following passage, some words have been deleted. Read the passage carefully and select the most appropriate option to fill in each blank.

Once, a man and his son were going into town. (1) _____ wanted to sell some potatoes. They went with (2) _____ donkey, and the donkey (3) _____ the potatoes. While they walked, (4) _____ man came past on a horse. "Shame (5) _____ you!" he said. "Why do you have a donkey, but you don't ride it?"

SubQuestion No : 25

Q.25 Select the most appropriate option to fill in blank number 5.

- Ans 1. on
 2. at
 3. by
 4. for

Question ID : 65497832249

Status : Answered

Chosen Option : 1

Section : Part D Hindi

Q.1 सही वर्तनी वाले शब्द का चयन करें।

- Ans 1. इषालु
 2. इर्षालू
 3. ईर्षालु
 4. ईष्यालू

Question ID : 65497832258

Status : Not Answered

Chosen Option : --

Q.2 रिक्त स्थान को भरने के लिए सबसे उपयुक्त शब्द का चयन करें।

पेड़ पर चिड़िया _____ है।

- Ans
- 1. टिटकारती
 - 2. कडकती
 - 3. चहचहाती
 - 4. हिनहिनाती

Question ID : 65497832256
Status : Not Answered
Chosen Option : --

Q.3 दिए गए वाक्य में रेखांकित खंड को प्रतिस्थापित करने के लिए सबसे उपयुक्त विकल्प का चयन करें।
यदि इसे प्रतिस्थापित करने की आवश्यकता नहीं है, तो विकल्प 'किसी बदलाव की आवश्यकता नहीं है'
का चयन करें।

असली भैंस का दूध बहुत मीठा होता है।

- Ans
- 1. किसी बदलाव की आवश्यकता नहीं है।
 - 2. भैंस का असली दूध
 - 3. गाय का दूध
 - 4. भैंस का दूध

Question ID : 65497832264
Status : Not Answered
Chosen Option : --

Q.4 'अधेर करना' मुहावरे का अर्थ बताइए।

- Ans
- 1. घमंड करना
 - 2. अन्याय करना
 - 3. अधेरा करना
 - 4. भ्रष्टाचार करना

Question ID : 65497832260
Status : Not Answered
Chosen Option : --

Q.5 'आदर और निरादर करना' यह अर्थ किस मुहावरे का है?

- Ans
- 1. पान-पत्ते तक सीमित होना
 - 2. पान-पनही खिलाना
 - 3. पान-फूल पर रहना
 - 4. पान-फूल-सा

Question ID : 65497832253
Status : Not Answered
Chosen Option : --

Q.6 'जो न जाना गया हो' वाक्यांश के लिए एक शब्द होगा-

- Ans
- 1. अनजान
 - 2. अतिथि
 - 3. ज्ञात
 - 4. अज्ञात

Question ID : 65497832266
Status : Not Answered
Chosen Option : --

Q.7 दिए गए वाक्य में रेखांकित खंड को प्रतिस्थापित करने के लिए सबसे उपयुक्त विकल्प का चयन करें। यदि इसे प्रतिस्थापित करने की आवश्यकता नहीं है, तो विकल्प 'किसी बदलाव की आवश्यकता नहीं है' का चयन करें।

अच्छे लड़के परिश्रमी होती हैं।

- Ans
- 1. होता है।
 - 2. होती है।
 - 3. होते हैं।
 - 4. किसी बदलाव की आवश्यकता नहीं है।

Question ID : 65497832255

Status : Not Answered

Chosen Option : --

Q.8 दिए गए शब्द के समानार्थी शब्द का चयन करें।

इंद्र

- Ans
- 1. ईश्वर
 - 2. देवराज
 - 3. भगवान
 - 4. यक्षराज

Question ID : 65497832263

Status : Not Answered

Chosen Option : --

Q.9 दिए गए वाक्य का वह भाग ज्ञात करें जिसमें कोई त्रुटि है। यदि कोई त्रुटि नहीं है, तो 'कोई त्रुटि नहीं है' चुनें।

अन्य वर्ष के (1)/ समान इस वर्ष भी (2)/ फसल अच्छी रही। (3)/ कोई त्रुटि नहीं है (4)

- Ans
- 1. 1
 - 2. 4
 - 3. 3
 - 4. 2

Question ID : 65497832250

Status : Not Answered

Chosen Option : --

Q.10 दिए गए वाक्य में रेखांकित खंड को प्रतिस्थापित करने के लिए सबसे उपयुक्त विकल्प का चयन करें। यदि इसे प्रतिस्थापित करने की आवश्यकता नहीं है, तो विकल्प 'किसी बदलाव की आवश्यकता नहीं है' का चयन करें।

वह मुझे अनन्तकाल से नहीं मिला।

- Ans
- 1. पुरातन काल से
 - 2. प्राचीन काल में
 - 3. चिरकाल से
 - 4. किसी बदलाव की आवश्यकता नहीं है।

Question ID : 65497832261

Status : Not Answered

Chosen Option : --

Q.11 रिक्त स्थान को भरने के लिए सबसे उपयुक्त शब्द का चयन करें।

परिवर्तन _____ का नियम है।

- Ans
- 1. सस्कृति
 - 2. जगत
 - 3. प्रकृति
 - 4. पृथ्वी

Question ID : 65497832259
Status : Not Answered
Chosen Option : --

Q.12 'दोपहर के बाद का समय' वाक्यांश के लिए एक शब्द होगा-

- Ans
- 1. अपराह्न
 - 2. गोधूलि
 - 3. मध्याह्न
 - 4. पूर्वाह्न

Question ID : 65497832269
Status : Not Answered
Chosen Option : --

Q.13 कौनसा विलोम युग्म सुमेलित नहीं है?

- Ans
- 1. अगीकार-स्वीकार
 - 2. अधम-उत्तम
 - 3. अवनत-उन्नत
 - 4. अकाम-सकाम

Question ID : 65497832252
Status : Not Answered
Chosen Option : --

Q.14 दिए गए शब्द के समानार्थी शब्द का चयन कीजिए।

चुरगी

- Ans
- 1. घुड़सवार
 - 2. घुड़सार
 - 3. घुड़साल
 - 4. अस्तबल

Question ID : 65497832251
Status : Not Answered
Chosen Option : --

Q.15 दिए गए वाक्य का वह भाग ज्ञात करें जिसमें कोई त्रुटि है। यदि कोई त्रुटि नहीं है, तो 'कोई त्रुटि नहीं है' चुनें।

प्रस्तुत पक्तियाँ (1)/ कामायनी से (2)/ ली हैं। (3)/ कोई त्रुटि नहीं है। (4)

- Ans
- 1. 4
 - 2. 3
 - 3. 2
 - 4. 1

Question ID : 65497832262
Status : Not Answered
Chosen Option : --

Q.16 सही वर्तनी वाले शब्द का चयन करें।

- Ans 1. अदितीत
 2. अद्वितिय
 3. अद्वितीय
 4. अदुतीय

Question ID : 65497832257
 Status : Not Answered
 Chosen Option : --

Q.17 दिये गये वाक्य के किस भाग में त्रुटि है?

कवि ने प्रकृति की सुदर शोभा का वर्णन किया है।

- Ans 1. सुदर शोभा का
 2. वर्णन किया है।
 3. कवि ने
 4. प्रकृति की

Question ID : 65497832267
 Status : Not Answered
 Chosen Option : --

Q.18 दिये गये वाक्यांश के लिए एक सार्थक शब्द दीजिए।

जिसकी जीविका निश्चित न हो

- Ans 1. खेचर
 2. अगोचर
 3. आत्मघाती
 4. आकाशवृि

Question ID : 65497832254
 Status : Not Answered
 Chosen Option : --

Q.19 नीचे दिए वाक्य में रिक्त-स्थान भरने के लिए सबसे उपयुक्त शब्द का चयन करें।

बरगद _____ हहरा रहा था।

- Ans 1. साय-साय
 2. हर-हर
 3. झाँप-झाँप
 4. सर-सर

Question ID : 65497832265
 Status : Not Answered
 Chosen Option : --

Q.20 'उग्र' का विलोम शब्द होगा-

- Ans 1. प्रखर
 2. सरल
 3. सौम्य
 4. कठोर

Question ID : 65497832268
 Status : Not Answered
 Chosen Option : --

Comprehension:

मनुष्य शारीरिक कष्ट से ही पीछे हटने वाला (1) _____ नहीं है। मानसिक क्लेश की सभावना से भी बहुत-से कर्मों की ओर प्रवृत्त होने का (2) _____ उसे नहीं होता। जिन बातों से समाज के बीच उपहास, निंदा, (3) _____ इत्यादि का भय रहता है, उन्हें अच्छी और कल्याणकारिणी समझते हुए भी बहुत से लोग उनसे दूर रहते हैं। (4) _____ हानि देखते हुए भी कुछ प्रथाओं का अनुसरण बड़े-बड़े समझदार तक इसलिए करते चलते हैं कि उनके त्याग से वे बुरे कहे जाएँगे; लोगो में उनका वैसा आदर - सम्मान न रह जाएगा। उसके लिए मान - ग्लानि का कष्ट सब शारीरिक (5) _____ से बढ़कर होता है।

निम्न प्रश्नों के उत्तर उपरोक्त गद्यांश के आधार पर दीजिए।

SubQuestion No : 21

Q.21 गद्यांश के रिक्त स्थान (1) के लिए सर्वाधिक उपयुक्त शब्द होगा-

- Ans
- 1. नभचर
 - 2. जलचर
 - 3. प्राणी
 - 4. जानवर

Question ID : 65497832271

Status : Not Answered

Chosen Option : --

Comprehension:

मनुष्य शारीरिक कष्ट से ही पीछे हटने वाला (1) _____ नहीं है। मानसिक क्लेश की सभावना से भी बहुत-से कर्मों की ओर प्रवृत्त होने का (2) _____ उसे नहीं होता। जिन बातों से समाज के बीच उपहास, निंदा, (3) _____ इत्यादि का भय रहता है, उन्हें अच्छी और कल्याणकारिणी समझते हुए भी बहुत से लोग उनसे दूर रहते हैं। (4) _____ हानि देखते हुए भी कुछ प्रथाओं का अनुसरण बड़े-बड़े समझदार तक इसलिए करते चलते हैं कि उनके त्याग से वे बुरे कहे जाएँगे; लोगो में उनका वैसा आदर - सम्मान न रह जाएगा। उसके लिए मान - ग्लानि का कष्ट सब शारीरिक (5) _____ से बढ़कर होता है।

निम्न प्रश्नों के उत्तर उपरोक्त गद्यांश के आधार पर दीजिए।

SubQuestion No : 22

Q.22 गद्यांश के रिक्त स्थान (2) के लिए सर्वाधिक उपयुक्त शब्द होगा-

- Ans
- 1. दुस्साहस
 - 2. साहस
 - 3. हिम्मत
 - 4. प्रयास

Question ID : 65497832272

Status : Not Answered

Chosen Option : --

Comprehension:

मनुष्य शारीरिक कष्ट से ही पीछे हटने वाला (1) _____ नहीं है। मानसिक क्लेश की सभावना से भी बहुत-से कर्मों की ओर प्रवृत्त होने का (2) _____ उसे नहीं होता। जिन बातों से समाज के बीच उपहास, निंदा, (3) _____ इत्यादि का भय रहता है, उन्हें अच्छी और कल्याणकारिणी समझते हुए भी बहुत से लोग उनसे दूर रहते हैं। (4) _____ हानि देखते हुए भी कुछ प्रथाओं का अनुसरण बड़े-बड़े समझदार तक इसलिए करते चलते हैं कि उनके त्याग से वे बुरे कहे जाएँगे; लोगो में उनका वैसा आदर - सम्मान न रह जाएगा। उसके लिए मान - ग्लानि का कष्ट सब शारीरिक (5) _____ से बढ़कर होता है।

निम्न प्रश्नों के उत्तर उपरोक्त गद्यांश के आधार पर दीजिए।

SubQuestion No : 23

Q.23 गद्यांश के रिक्त स्थान (3) के लिए सर्वाधिक उपयुक्त शब्द होगा-

- Ans
- 1. यश
 - 2. अपमान
 - 3. सम्मान
 - 4. स्तुति

Question ID : 65497832273

Status : Not Answered

Chosen Option : --

Comprehension:

मनुष्य शारीरिक कष्ट से ही पीछे हटने वाला (1) _____ नहीं है। मानसिक क्लेश की सभावना से भी बहुत-से कर्मों की ओर प्रवृत्त होने का (2) _____ उसे नहीं होता। जिन बातों से समाज के बीच उपहास, निंदा, (3) _____ इत्यादि का भय रहता है, उन्हें अच्छी और कल्याणकारिणी समझते हुए भी बहुत से लोग उनसे दूर रहते हैं। (4) _____ हानि देखते हुए भी कुछ प्रथाओं का अनुसरण बड़े-बड़े समझदार तक इसलिए करते चलते हैं कि उनके त्याग से वे बुरे कहे जाएँगे; लोगो में उनका वैसा आदर - सम्मान न रह जाएगा। उसके लिए मान - ग्लानि का कष्ट सब शारीरिक (5) _____ से बढ़कर होता है।

निम्न प्रश्नों के उत्तर उपरोक्त गद्यांश के आधार पर दीजिए।

SubQuestion No : 24

Q.24 गद्यांश के रिक्त स्थान (4) के लिए सर्वाधिक उपयुक्त शब्द होगा-

- Ans
- 1. भयकर
 - 2. परोक्ष
 - 3. भीषण
 - 4. प्रत्यक्ष

Question ID : 65497832274

Status : Not Answered

Chosen Option : --

Comprehension:

मनुष्य शारीरिक कष्ट से ही पीछे हटने वाला (1) _____ नहीं है। मानसिक क्लेश की सभावना से भी बहुत-से कर्मों की ओर प्रवृत्त होने का (2) _____ उसे नहीं होता। जिन बातों से समाज के बीच उपहास, निंदा, (3) _____ इत्यादि का भय रहता है, उन्हें अच्छी और कल्याणकारिणी समझते हुए भी बहुत से लोग उनसे दूर रहते हैं। (4) _____ हानि देखते हुए भी कुछ प्रथाओं का अनुसरण बड़े-बड़े समझदार तक इसलिए करते चलते हैं कि उनके त्याग से वे बुरे कहे जाएँगे; लोगो में उनका वैसा आदर - सम्मान न रह जाएगा। उसके लिए मान - ग्लानि का कष्ट सब शारीरिक (5) _____ से बढ़कर होता है।

निम्न प्रश्नों के उत्तर उपरोक्त गद्यांश के आधार पर दीजिए।

SubQuestion No : 25

Q.25 गद्यांश के रिक्त स्थान (5) के लिए सर्वाधिक उपयुक्त शब्द होगा-

- Ans
- 1. क्लेशो
 - 2. सुखो
 - 3. अगो
 - 4. अपराधो

Question ID : 65497832275

Status : Not Answered

Chosen Option : --

Exam Date	14/12/2021
Exam Time :	4:00 PM - 5:30 PM
Subject	Constable GD 2021

Section : Part A General Intelligence and Reasoning

Q.1 In a certain code language, 'CASTER' is coded as '32619759'. How will 'FRIDGE' be coded in that language?

- Ans
- 1. 61824722
 - 2. 69922721
 - 3. 69923722
 - 4. 61894705

Question ID : 65497834563
 Status : Answered
 Chosen Option : 3

Q.2 Select the combination of letters that when sequentially placed in the blanks of the given series will complete the series.

_ P G _ _ M P _ _ A _ _ G F A

- Ans
- 1. MFAGMFP
 - 2. MFAGFMP
 - 3. MAGFMPF
 - 4. MFAFGMP

Question ID : 65497834567
 Status : Answered
 Chosen Option : 2

Q.3 If '÷' means '+', '-' means '×', '+' means '-' and '×' means '÷', then which of the following equations is correct?

- Ans
- 1. $42 \times 28 - 30 \div 48 + 45 = 45$
 - 2. $42 \times 28 - 30 \div 48 + 45 = 50$
 - 3. $42 \times 28 - 30 \div 48 + 45 = 48$
 - 4. $42 \times 28 - 30 \div 48 + 45 = 40$

Question ID : 65497834575
 Status : Answered
 Chosen Option : 3

Q.4 Select the number from among the given options that can replace the question mark (?) in the following series.

7, 14, 28, 56, ?

- Ans
- 1. 150
 - 2. 72
 - 3. 90
 - 4. 112

Question ID : 65497834568
 Status : Answered
 Chosen Option : 4

Q.5 In a certain code language, 'FASHION' is written as 'NISFAHO'. How will 'BLANKET' be written in that language?

- Ans
- 1. ANKBLET
 - 2. TKABLNE
 - 3. NKETBLA
 - 4. TEKNALB

Question ID : 65497834580
 Status : Answered
 Chosen Option : 2

Q.6 Select the option in which the given figure is embedded (rotation is NOT allowed).



Ans

- 1.
- 2.
- 3.
- 4.

Question ID : 65497834577
 Status : Answered
 Chosen Option : 4

Q.7 Select the correct mirror image of the given combination when the mirror is placed at the right side.

4 7 6 Y f Q

Ans

- 1. Q † Y θ † 7 4
- 2. Q † Y 9 † 7 4
- 3. Q † Y θ † 7 4
- 4. Q † Y θ † 7 4

Question ID : 65497834565
 Status : Answered
 Chosen Option : 3

Q.8 Select the option that is related to the third term in the same way as the second term is related to the first term.

CAMEL : BBLFK :: WORDS : ?

Ans

- 1. XXSES
- 2. XNSCT
- 3. VVQRE
- 4. VPQER

Question ID : 65497834579
 Status : Answered
 Chosen Option : 4

Q.9 Select the number from among the given options that can replace the question mark (?) in the following series.

5, 5, 15, 75, ?, 4725

Ans

- 1. 325
- 2. 385
- 3. 150
- 4. 525

Question ID : 65497834564
 Status : Answered
 Chosen Option : 4

Q.10 Select the option in which the numbers are related in the same way as are the numbers of the following set.

5, 10, 100

Ans

- 1. 20, 40, 120
- 2. 16, 32, 320
- 3. 15, 30, 225
- 4. 12, 36, 160

Question ID : 65497834584
 Status : Answered
 Chosen Option : 2

Q.11 J and K are siblings. M is the maternal uncle of J. S is the maternal grandmother of K. A is the only daughter of S. How is A related to M?

- Ans
- 1. Brother
 - 2. Sister
 - 3. Sister-in-law
 - 4. Cousin

Question ID : 65497834581
 Status : Answered
 Chosen Option : 2

Q.12 Select the figure from among the given options that can replace the question mark (?) in the following series.

%	#	@	#	@	S
S	@	#	S	@	?
%	#	@	#	@	S
&	S	%	&	S	Q

Ans

- 1.

&		
#		S
S	@	%
- 2.

&	%	#
		@
		S
- 3.

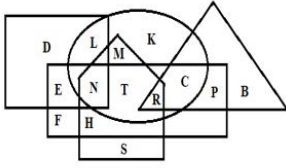
&		
%		
@	#	S
- 4.

	&	%
Q	S	@

KD Job Updates

Question ID : 65497834569
 Status : Answered
 Chosen Option : 2

Q.13 In the following figure, the circle represents 'paragraphs', the triangle represents 'black', the pentagon represents 'books', the square represents 'pages', and the rectangle represents 'blue'.



Select the letter that represents blue books that have pages and paragraphs.

- Ans
- 1. M
 - 2. N
 - 3. C
 - 4. R

Question ID : 65497834578

Status : Answered

Chosen Option : 2

Q.14 In a row, Manu is at the 14th position from the left and Sam is at the 9th position from the right. If they interchange their positions, then Sam becomes 12th from the right. Find the total number of persons present in the row.

- Ans
- 1. 30
 - 2. 28
 - 3. 20
 - 4. 25

Question ID : 65497834572

Status : Answered

Chosen Option : 4

Q.15 In a certain code language, RINGS is written as IRNSG, and PURSE is written as UPRES. How will STORM be written in that language?

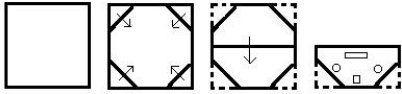
- Ans
- 1. TSOMR
 - 2. MROTS
 - 3. UTPNS
 - 4. ORMGH

Question ID : 65497834582

Status : Answered

Chosen Option : 1

Q.16 The sequence of folding a piece of paper and the manner in which the folded paper has been cut is shown in the following figures. How would this paper look when unfolded?



Ans

- ✓ 1.
- ✗ 2.
- ✗ 3.
- ✗ 4.

Question ID : 65497834586
 Status : Answered
 Chosen Option : 1

Q.17 Select the letter-cluster from among the given options that can replace the question mark (?) in the following series.

FW, JS, ?, RK, VG

- Ans
- ✗ 1. MO
 - ✗ 2. MP
 - ✓ 3. NO
 - ✗ 4. NP

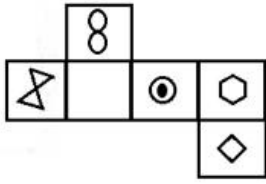
Question ID : 65497834570
 Status : Answered
 Chosen Option : 3

Q.18 Four letter-clusters have been given, out of which three are alike in some manner and one is different. Select the letter-cluster that is different.

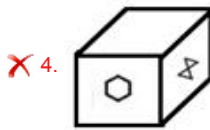
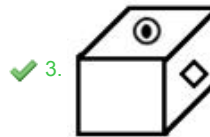
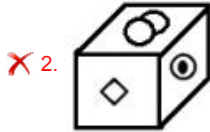
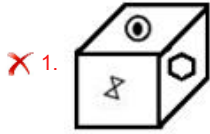
- Ans
- ✗ 1. QSUWY
 - ✓ 2. CEHJK
 - ✗ 3. JLNPR
 - ✗ 4. BDFHJ

Question ID : 65497834562
 Status : Answered
 Chosen Option : 2

Q.19 Select the box that can be formed by folding the given sheet along the lines.



Ans



Question ID : 65497834576

Status : Answered

Chosen Option : 3

Q.20 Seven persons, K, L, M, N, O, P and Q, are sitting in a row facing towards the north. K and M are sitting together. O is at the east-end. P is between Q and M. Q is sitting in the middle. N is between O and L. K is sitting at the west-end. Who is sitting at the fifth position from the east?

Ans ✗ 1. M

✗ 2. N

✗ 3. L

✓ 4. P

Question ID : 65497834573

Status : Answered

Chosen Option : 4

Q.21 Select the option that is related to the third number in the same way as the second number is related to the first number.

13 : 169 :: 21 : ?

Ans ✓ 1. 441

✗ 2. 361

✗ 3. 256

✗ 4. 400

Question ID : 65497834574

Status : Answered

Chosen Option : 1

Q.22 Select the option that is related to the third word in the same way as the second word is related to the first word.

Spinach : Leaves :: Carrot : ?

- Ans 1. Root
 2. Seed
 3. Stem
 4. Flower

Question ID : 65497834571
 Status : Answered
 Chosen Option : 1

Q.23 Three persons A, B and C start a business with a total amount of ₹2,60,000. The ratio of their investment in the total amount is 15 : 18 : 19, respectively. They earn a profit of 12% this year on the total investment. The profit is to be distributed in the same ratio of investment. How much profit will C earn?

- Ans 1. ₹12,200
 2. ₹13,200
 3. ₹11,400
 4. ₹10,800

Question ID : 65497834585
 Status : Answered
 Chosen Option : 3

Q.24 Select the correct option that indicates the arrangement of the given words in the order in which they appear in an English dictionary.

1. Possibility
2. Possession
3. Posthumous
4. Posterity
5. Possessive

- Ans 1. 2, 5, 1, 3, 4
 2. 2, 5, 1, 4, 3
 3. 2, 5, 3, 4, 1
 4. 3, 5, 1, 4, 2

Question ID : 65497834566
 Status : Answered
 Chosen Option : 2

Q.25 Read the given statement(s) and conclusions carefully. Assuming that the information given in the statements is true, even if it appears to be at variance with commonly known facts, decide which of the given conclusions logically follow(s) from the statement(s).

Statements:

Some Queens are kings.

All kings are officers.

No officer is architect.

Conclusions:

I. Some officers are queens.

II. No king is architect.

- Ans**
- 1. Either conclusion I or II follows.
 - 2. Both the conclusions follow.
 - 3. Only conclusion II follows.
 - 4. Only conclusion I follows.

Question ID : 65497834583

Status : Answered

Chosen Option : 1

Section : Part B General Knowledge and General Awareness

Q.1 Which of the following nations will host the Indian Ocean Island Games 2023?

- Ans**
- 1. Mauritius
 - 2. Seychelles
 - 3. Maldives
 - 4. Madagascar

Question ID : 65497834590

Status : Not Answered

Chosen Option : --

Q.2 Team India ranked _____ in World Test Championship standings after the International Cricket Council (ICC) released a new point system in November 2020.

- Ans**
- 1. second
 - 2. third
 - 3. fourth
 - 4. first

Question ID : 65497834609

Status : Answered

Chosen Option : 4

Q.3 The Cabinet Committee on Economic Affairs approved the increase in the Minimum Support Prices (MSPs) for all mandated Kharif crops for the marketing season 2021-22 in June 2021. The highest absolute increase in MSP over the previous year has been recommended for _____ at ₹452 per quintal.

- Ans**
- 1. sesame
 - 2. groundnut
 - 3. cotton
 - 4. maize

Question ID : 65497834610

Status : Not Answered

Chosen Option : --

Q.4 Which of the following dams is NOT built across the river Kaveri (Cauvery)?

- Ans 1. Maithon
 2. Mettur
 3. Kallanai
 4. Krishna Raja Sagara

Question ID : 65497834608
Status : Answered
Chosen Option : 4

Q.5 Who had handwritten the original Constitution of India?

- Ans 1. Nandalal Bose
 2. Dr Sachchidananda Sinha
 3. Beohar Rammanohar Sinha
 4. Prem Behari Narain Raizada

Question ID : 65497834606
Status : Answered
Chosen Option : 4

Q.6 Mount Siniolchu is located in which state of India?

- Ans 1. Himachal Pradesh
 2. Nagaland
 3. Andhra Pradesh
 4. Sikkim

Question ID : 65497834588
Status : Not Answered
Chosen Option : --

Q.7 Who among the following won the French Open tennis tournament in October 2020 and equalled Roger Federer's all-time record of winning 20 Grand Slams titles?

- Ans 1. Andy Murray
 2. Novak Djokovic
 3. Dominic Thiem
 4. Rafael Nadal

Question ID : 65497834591
Status : Answered
Chosen Option : 4

Q.8 Which of the following institutions organised an international webinar on Indian Knowledge Systems from 6 to 8 November 2020?

- Ans 1. IIT Delhi
 2. IIT Bombay
 3. IIT Kharagpur
 4. IIT Kanpur

Question ID : 65497834601
Status : Not Answered
Chosen Option : --

Q.9 As of November 2020, Asiatic Lions are protected in India under Schedule _____ of the Wildlife Protection Act (1972).

- Ans
- 1. III
 - 2. II
 - 3. IV
 - 4. I

Question ID : 65497834593
Status : Not Answered
Chosen Option : --

Q.10 Which of the following rivers is a tributary of Ghaghara River?

- Ans
- 1. Son River
 - 2. Gomti River
 - 3. Kosi River
 - 4. Sarayu River

Question ID : 65497834602
Status : Answered
Chosen Option : 3

Q.11 Which Indian author was shortlisted for International Dublin Literary Award 2020?

- Ans
- 1. Shashi Deshpande
 - 2. Anuradha Roy
 - 3. Chitra Banerjee Divakaruni
 - 4. Anita Nair

Question ID : 65497834589
Status : Not Answered
Chosen Option : --

Q.12 In which of the following states of India is the 'Black Hole' monument located?

- Ans
- 1. Odisha
 - 2. Telangana
 - 3. Gujarat
 - 4. West Bengal

Question ID : 65497834587
Status : Answered
Chosen Option : 4

Q.13 Which of the following folk dances belongs to the tribes of the Jharkhand state?

- Ans
- 1. Huttari dance
 - 2. Nati Dance
 - 3. Mundari dance
 - 4. Bhavai dance

Question ID : 65497834596
Status : Not Answered
Chosen Option : --

Q.14 The Fourth Schedule of the Constitution of India contains the subject matter related to:

- Ans
- 1. languages recognised by the Constitution
 - 2. forms of oath or affirmations
 - 3. power, authority and responsibilities of panchayats
 - 4. allocation of seats in the Rajya Sabha

Question ID : 65497834600
Status : Answered
Chosen Option : 4

Q.15 Who took over charge as the chairman of Telecom Regulatory Authority of India (TRAI) on 1 October 2020?

- Ans
- 1. PD Vaghela
 - 2. Pradip Bajjal
 - 3. Rahul Khullar
 - 4. RS Sharma

Question ID : 65497834607
Status : Answered
Chosen Option : 4

Q.16 Geneva is the headquarters of _____.

- Ans
- 1. WTO
 - 2. UNICEF
 - 3. IMF
 - 4. UNESCO

Question ID : 65497834592
Status : Answered
Chosen Option : 1

Q.17 Which of the following laws can be explained as 'An object remains in a state of rest or of uniform motion in a straight line unless compelled to change that state by an applied force.'?

- Ans
- 1. Second law of motion
 - 2. First law of motion
 - 3. Third law of motion
 - 4. First law of thermodynamics

Question ID : 65497834597
Status : Answered
Chosen Option : 2

Q.18 Which satellite-based system that was launched by the Indian National Centre for Ocean Information Services (INCOIS) and Airport Authority of India (AAI) in October 2019 will alert deep-sea fishermen of upcoming disasters?

- Ans
- 1. GPS
 - 2. GEMINI
 - 3. SBAS
 - 4. GNSS

Question ID : 65497834604
Status : Not Answered
Chosen Option : --

Q.19 Where will the Reserve Bank of India be setting up its first Automated Banknote Processing Centre for storage, receipt and dispatch of currency notes in 2020?

- Ans
- 1. Mumbai
 - 2. Ahmedabad
 - 3. Bengaluru
 - 4. Jaipur

Question ID : 65497834603
Status : Not Answered
Chosen Option : --

Q.20 Which of the following is NOT one of the 16 Mahajanapadas?

- Ans
- 1. Kosala
 - 2. Anga
 - 3. Kuru
 - 4. Kamarupa

Question ID : 65497834594
Status : Answered
Chosen Option : 4

Q.21 Who became the first Indian to be honoured with the 'Richard Dawkins Award 2020'?

- Ans
- 1. Anurag Kashyap
 - 2. Javed Akhtar
 - 3. Shahrukh Khan
 - 4. Aamir Khan

Question ID : 65497834599
Status : Answered
Chosen Option : 1

Q.22 Ashvaghosha was a poet in the court of King _____

- Ans
- 1. Kanishka
 - 2. Chandragupta Maurya
 - 3. Harshavardhana
 - 4. Ashoka

Question ID : 65497834611
Status : Answered
Chosen Option : 1

Q.23 Who started the Satnami movement in central India to improve the social status of leather workers?

- Ans
- 1. Shri Narayana
 - 2. Ghasidas
 - 3. Balakdas
 - 4. Haridas Thakur

Question ID : 65497834605
Status : Not Answered
Chosen Option : --

Q.24 Which of the following is NOT an example of a viral disease?

- Ans
- 1. Roseola
 - 2. Plague
 - 3. Ebola
 - 4. AIDS

Question ID : 65497834598
 Status : Answered
 Chosen Option : 2

Q.25 In October 2020, _____ became the first 'Har Ghar Jal' state in the country by providing 100% functional household tap water connections to every rural household in the state.

- Ans
- 1. Bihar
 - 2. Goa
 - 3. Punjab
 - 4. Andhra Pradesh

Question ID : 65497834595
 Status : Answered
 Chosen Option : 2

Section : Part C Elementary Mathematics

Q.1 A circle and a rectangle have the same perimeter. If the sides of the rectangle are 15 cm and 7 cm, then the area of circle is:

- Ans
- 1. 145 cm²
 - 2. 144 cm²
 - 3. 154 cm²
 - 4. 156 cm²

Question ID : 65497834618
 Status : Answered
 Chosen Option : 3

Q.2 In an election between two candidates, 8% of the votes were invalid. The winning candidate got 60% of the total valid votes and won the election by 5888 votes. How many voters were registered?

- Ans
- 1. 29500
 - 2. 33260
 - 3. 30000
 - 4. 32000

Question ID : 65497834635
 Status : Answered
 Chosen Option : 4

Q.3 What is the largest 4-digit number that is divisible by 10, 15 and 18?

- Ans
- 1. 9900
 - 2. 9090
 - 3. 9990
 - 4. 9999

Question ID : 65497834634
Status : Answered
Chosen Option : 3

Q.4 An AC can cool a hall in 10 min, while an AC of another brand can cool the same hall in 15 min. If both the ACs are switched on at the same time, then in how much time will they cool the hall?

- Ans
- 1. 3 min
 - 2. 18 min
 - 3. 6 min
 - 4. 12 min

Question ID : 65497834633
Status : Answered
Chosen Option : 3

Q.5 The letter B in the BODMAS rule stands for:

- Ans
- 1. Bracket
 - 2. By
 - 3. Binomial
 - 4. Before

Question ID : 65497834631
Status : Answered
Chosen Option : 1

Q.6 The sum of three positive numbers is 339. If the ratio of the first number to the second number is 3 : 7, and that of the second number to the third number is 5 : 9, then the second number is:

- Ans
- 1. 105
 - 2. 115
 - 3. 125
 - 4. 95

Question ID : 65497834617
Status : Answered
Chosen Option : 1

Q.7 A batsman in his 18th innings makes a score of 80 and thereby increasing his average by 4. What is his average after the 18th innings?

- Ans**
- 1. 12
 - 2. 14
 - 3. 10
 - 4. 8

Question ID : 65497834620
Status : Answered
Chosen Option : 1

Q.8 An amount is distributed among 4 friends X, Y, Z, W in the ratio 5 : 2 : 4 : 3, respectively. If Z gets ₹1,000 more than W, then what is Y's share?

- Ans**
- 1. ₹1,000
 - 2. ₹2,000
 - 3. ₹4,000
 - 4. ₹3,000

Question ID : 65497834628
Status : Answered
Chosen Option : 2

Q.9 Simran gets a discount of 20% on an oven whose price is ₹3,200. Since she pays cash, she gets an additional 5% discount too. How much does she pay?

- Ans**
- 1. ₹2,402
 - 2. ₹2,432
 - 3. ₹2,500
 - 4. ₹2,439

Question ID : 65497834622
Status : Answered
Chosen Option : 2

Q.10 If the Selling Price of a toy is $\frac{4}{3}$ of its Cost Price, then the profit percentage is:

- Ans**
- 1. $\frac{1}{3}$ %
 - 2. $\frac{61}{3}$ %
 - 3. $\frac{100}{3}$ %
 - 4. $\frac{41}{3}$ %

Question ID : 65497834632
Status : Answered
Chosen Option : 3

Q.11

The expression $\frac{5 - \left[\frac{3}{4} + \left\{ 2\frac{1}{2} - \left(\frac{1}{2} + \frac{1}{6} - \frac{1}{7} \right) \right\} \right]}{6}$ equals:

Ans

1. $\frac{13}{56}$
 2. $\frac{97}{168}$
 3. $\frac{191}{504}$
 4. $\frac{19}{54}$

Question ID : 65497834615

Status : Answered

Chosen Option : 3

Q.12 A sum of money is to be distributed among A, B, C, D in the ratio of 5 : 2 : 4 : 3. If A gets ₹1,000 more than D, then what is B's share?

Ans

1. ₹1,200
 2. ₹1,000
 3. ₹500
 4. ₹1,600

Question ID : 65497834624

Status : Answered

Chosen Option : 2

Q.13 If V and S denote the volume and Total Surface Area of a cuboid (of sides a, b, c), respectively, then which of the following is true?

Ans

1. $(1/V) = (2/S) (a + b + c)$
 2. $(1/V) = (S) (1/a + 1/b + 1/c)$
 3. $(1/V) = (2/S) (1/a + 1/b + 1/c)$
 4. $V = (2/S) (1/a + 1/b + 1/c)$

Question ID : 65497834630

Status : Answered

Chosen Option : 3

Q.14 A man walked at a speed of 9 km/h from point A to B and came back from point B to A at a speed of 15 km/h. The ratio of the time taken by the man in walking from B to A to that from A to B was:

Ans

1. 7 : 2
 2. 5 : 3
 3. 3 : 5
 4. 2 : 7

Question ID : 65497834616

Status : Answered

Chosen Option : 2

Q.15 A trader lists his articles 26% above the cost price and allows a discount of 15% on every article. What is his gain percentage?

- Ans**
- 1. 20.5
 - 2. 26
 - 3. 7.1
 - 4. 11

Question ID : 65497834612
Status : Answered
Chosen Option : 3

Q.16 Yusuf purchased an item for ₹5,500 and sold it at a profit of 15%. From that amount, he purchased another item and sold it at 12% profit. What is his overall gain?

- Ans**
- 1. ₹825
 - 2. ₹1,485
 - 3. ₹859
 - 4. ₹1,584

Question ID : 65497834613
Status : Answered
Chosen Option : 4

Q.17 Two boys start from the same place walking at the speeds of 5.5 km/h and 3.5 km/h, respectively, in the same direction. What time will they take to be 8.8 km apart?

- Ans**
- 1. 4.4 h
 - 2. 4 h
 - 3. 4.2 h
 - 4. 4.8 h

Question ID : 65497834627
Status : Answered
Chosen Option : 1

Q.18 A can finish as much work in 6 days as C can in 8 days. B can finish as much work in 6 days as C can in 4 days. How much time will B require to finish a work if A takes 54 days to finish it?

- Ans**
- 1. 118 days
 - 2. 128 days
 - 3. 100 days
 - 4. 108 days

Question ID : 65497834626
Status : Answered
Chosen Option : 4

Q.19 A fruit seller had some oranges. He sold 30% oranges and still had 210 oranges. The number of oranges he had, initially, was:

- Ans**
- 1. 300
 - 2. 200
 - 3. 150
 - 4. 350

Question ID : 65497834623
Status : Answered
Chosen Option : 1

Q.20 The difference between the compound interest and the simple interest on a certain sum at 10% per annum for 2 years is ₹1,200. Find the sum.

- Ans**
- 1. ₹1,20,000
 - 2. ₹2,70,000
 - 3. ₹2,00,000
 - 4. ₹1,50,000

Question ID : 65497834629
Status : Answered
Chosen Option : 1

Q.21 The average weight of X and Y is 40 kg. The average weight of Y and R is 62 kg and the average weight of X and R is 56 kg. The weight of X is:

- Ans**
- 1. 34 kg
 - 2. 30 kg
 - 3. 44 kg
 - 4. 32 kg

Question ID : 65497834621
Status : Answered
Chosen Option : 1

Q.22 What is the smallest number which when increased by 17 becomes exactly divisible by both 520 and 936?

- Ans**
- 1. 4663
 - 2. 6643
 - 3. 4643
 - 4. 4366

Question ID : 65497834619
Status : Answered
Chosen Option : 1

Q.23 A man buys milk at ₹50 per litre and adds to it water equal to one-third of the milk. If he sells it at ₹60 per litre, then find his profit percentage.

- Ans**
- 1. 40%
 - 2. 30%
 - 3. 20%
 - 4. 60%

Question ID : 65497834636
Status : Answered
Chosen Option : 4

Q.24 Anil took some loan on simple interest at a certain rate and paid ₹12,800 as interest after 2 years. His friend Sumit also borrowed the same sum on compound interest for the same period and same rate of interest compounded annually and paid ₹704 more interest than that paid by Anil. What is the rate of interest per annum?

- Ans**
- 1. 10%
 - 2. 11%
 - 3. 10.5%
 - 4. 12%

Question ID : 65497834614
Status : Answered
Chosen Option : 2

Q.25 At what rate of simple interest will a sum of ₹4,500 amount to ₹5,310 after 4 years?

- Ans**
- 1. 4.5%
 - 2. 4.0%
 - 3. 3.5%
 - 4. 5.5%

Question ID : 65497834625
Status : Answered
Chosen Option : 1

Section : Part D English

Q.1 Select the most appropriate synonym of the given word.

Alter

- Ans**
- 1. Transform
 - 2. Retain
 - 3. Preserve
 - 4. Beautify

Question ID : 65497834653
Status : Answered
Chosen Option : 1

Q.2 Select the most appropriate synonym of the given word.

Adversity

- Ans
- 1. Fortune
 - 2. Privilege
 - 3. Emergency
 - 4. Misfortune

Question ID : 65497834649
Status : Answered
Chosen Option : 4

Q.3 Select the option that can be used as a one-word substitute for the given group of words.

Make a machine active or operative

- Ans
- 1. Enthuse
 - 2. Activate
 - 3. Energise
 - 4. Initiate

Question ID : 65497834654
Status : Answered
Chosen Option : 3

Q.4 The following sentence has been split into four segments. Identify the segment that contains a grammatical error.

When Nancy saw the mess / the burglar was made, / she broke down / in tears.

- Ans
- 1. she broke down
 - 2. in tears
 - 3. the burglar was made
 - 4. When Nancy saw the mess

Question ID : 65497834652
Status : Answered
Chosen Option : 3

Q.5 Select the INCORRECTLY spelt word.

- Ans
- 1. Fluttering
 - 2. Menace
 - 3. Abbrevations
 - 4. Notoriety

Question ID : 65497834644
Status : Answered
Chosen Option : 3

Q.6 The following sentence has been split into four segments. Identify the segment that contains a grammatical error.

It was cold / and / we still / went swimming.

- Ans 1. and
 2. went swimming
 3. It was cold
 4. we still

Question ID : 65497834648
Status : Answered
Chosen Option : 2

Q.7 Select the option that can be used as a one-word substitute for the given group of words.

First show of a film or theatre

- Ans 1. Debris
 2. Easel
 3. Charade
 4. Premiere

Question ID : 65497834643
Status : Answered
Chosen Option : 4

Q.8 Select the most appropriate option to fill in the blank.

Suddenly, she jumped up and _____ his arm.

- Ans 1. captured
 2. grabbed
 3. snatched
 4. occupied

Question ID : 65497834637
Status : Answered
Chosen Option : 3

Q.9 Select the most appropriate meaning of the given idiom.

To get wind of

- Ans 1. To gain something unfairly
 2. To enjoy a nice weather
 3. To be clear about something
 4. To learn something secret

Question ID : 65497834638
Status : Answered
Chosen Option : 4

Q.10 Select the option that can be used as a one-word substitute for the given group of words.

Matter which is against moral values

- Ans 1. Mortal
 2. Immoral
 3. Immortal
 4. Amorous

Question ID : 65497834642
Status : Answered
Chosen Option : 2

Q.11 Select the most appropriate ANTONYM of the given word.

Deny

- Ans 1. Deflate
 2. Mourn
 3. Agree
 4. Exhaust

Question ID : 65497834641
Status : Answered
Chosen Option : 3

Q.12 Select the most appropriate option that can substitute the underlined segment in the given sentence. If there is no need to substitute it, select 'No substitution required'.

People in North India doesn't know much about South Indian culture.

- Ans 1. doesn't knows
 2. are not knowing
 3. No substitution required
 4. don't know

Question ID : 65497834650
Status : Answered
Chosen Option : 4

Q.13 Select the most appropriate option to fill in the blank.

The little girl walked slowly _____ her burden.

- Ans 1. bearing
 2. storing
 3. holding
 4. loading

Question ID : 65497834656
Status : Answered
Chosen Option : 1

Q.14 Select the most appropriate option that can substitute the underlined word in the given sentence.

In this modern world, everyone is associated in making easy money.

- Ans
- 1. accounted
 - 2. disassociated
 - 3. bothered
 - 4. interested

Question ID : 65497834640
Status : Answered
Chosen Option : 4

Q.15 Select the most appropriate meaning of the given idiom.

Get out of hand

- Ans
- 1. Lose control
 - 2. Slow down
 - 3. Calm down
 - 4. Work hard

Question ID : 65497834655
Status : Answered
Chosen Option : 1

Q.16 Select the most appropriate option that can substitute the underlined segment in the given sentence. If there is no need to substitute it, select 'No substitution required'.

When news of the concert leaks out, there will be a rush for the ticket.

- Ans
- 1. a rush for a ticket
 - 2. a rush for tickets
 - 3. No substitution required
 - 4. the rush for the tickets

Question ID : 65497834651
Status : Answered
Chosen Option : 2

Q.17 Select the most appropriate option to fill in the blank.

I was _____ by the sound of the doorbell.

- Ans
- 1. awakened
 - 2. enhanced
 - 3. enabled
 - 4. activated

Question ID : 65497834647
Status : Answered
Chosen Option : 1

Q.18 Select the INCORRECTLY spelt word.

- Ans 1. Beverage
 2. Cuisine
 3. Mundane
 4. Celastiel

Question ID : 65497834646
 Status : Answered
 Chosen Option : 4

Q.19 Select the most appropriate ANTONYM of the given word.

Advance

- Ans 1. Assemble
 2. Progress
 3. Approach
 4. Retreat

Question ID : 65497834645
 Status : Answered
 Chosen Option : 4

Q.20 The following sentence has been split into four segments. Identify the segment that contains a grammatical error.

Mona is from Paris. / She has live / there all / her life.

- Ans 1. she has live
 2. there all
 3. Mona is from Paris
 4. her life

Question ID : 65497834639
 Status : Answered
 Chosen Option : 1

Comprehension:

In the following passage, some words have been deleted. Read the passage carefully and select the most appropriate option to fill in each blank.

Naval architects never claim that a ship is unsinkable, but sinking of the passenger-and-car ferry Estonia in the Baltic surely should never (1)_____. It was well designed and carefully (2)_____. It carried the proper number of lifeboats. It had been (3)_____ inspected the day of its fatal voyage. Yet hours (4)_____, the Estonia rolled over and sank in a cold, stormy night. It went down (5)_____ quickly that most of those on board, caught in their dark, flooding cabins, had no chance to save themselves.

SubQuestion No : 21

Q.21 Select the most appropriate option to fill in blank no. 1.

- Ans 1. has happened
 2. had happened
 3. happened
 4. have happened

Question ID : 65497834658
 Status : Answered
 Chosen Option : 4

Comprehension:

In the following passage, some words have been deleted. Read the passage carefully and select the most appropriate option to fill in each blank.

Naval architects never claim that a ship is unsinkable, but sinking of the passenger-and-car ferry Estonia in the Baltic surely should never (1)_____. It was well designed and carefully (2)_____. It carried the proper number of lifeboats. It had been (3)_____ inspected the day of its fatal voyage. Yet hours (4)_____, the Estonia rolled over and sank in a cold, stormy night. It went down (5)_____ quickly that most of those on board, caught in their dark, flooding cabins, had no chance to save themselves.

SubQuestion No : 22

Q.22 Select the most appropriate option to fill in blank no. 2.

- Ans
- 1. maintain
 - 2. to be maintained
 - 3. maintaining
 - 4. maintained

Question ID : 65497834659
Status : Answered
Chosen Option : 4

Comprehension:

In the following passage, some words have been deleted. Read the passage carefully and select the most appropriate option to fill in each blank.

Naval architects never claim that a ship is unsinkable, but sinking of the passenger-and-car ferry Estonia in the Baltic surely should never (1)_____. It was well designed and carefully (2)_____. It carried the proper number of lifeboats. It had been (3)_____ inspected the day of its fatal voyage. Yet hours (4)_____, the Estonia rolled over and sank in a cold, stormy night. It went down (5)_____ quickly that most of those on board, caught in their dark, flooding cabins, had no chance to save themselves.

SubQuestion No : 23

Q.23 Select the most appropriate option to fill in blank no. 3.

- Ans
- 1. steadily
 - 2. thoroughly
 - 3. gradually
 - 4. immediately

Question ID : 65497834660
Status : Answered
Chosen Option : 2

Comprehension:

In the following passage, some words have been deleted. Read the passage carefully and select the most appropriate option to fill in each blank.

Naval architects never claim that a ship is unsinkable, but sinking of the passenger-and-car ferry Estonia in the Baltic surely should never (1)_____. It was well designed and carefully (2)_____. It carried the proper number of lifeboats. It had been (3)_____ inspected the day of its fatal voyage. Yet hours (4)_____, the Estonia rolled over and sank in a cold, stormy night. It went down (5)_____ quickly that most of those on board, caught in their dark, flooding cabins, had no chance to save themselves.

SubQuestion No : 24

Q.24 Select the most appropriate option to fill in blank no. 4.

- Ans
- 1. before
 - 2. latter
 - 3. earlier
 - 4. later

Question ID : 65497834661
Status : Answered
Chosen Option : 4

Comprehension:

In the following passage, some words have been deleted. Read the passage carefully and select the most appropriate option to fill in each blank.

Naval architects never claim that a ship is unsinkable, but sinking of the passenger-and-car ferry Estonia in the Baltic surely should never (1)_____. It was well designed and carefully (2)_____. It carried the proper number of lifeboats. It had been (3)_____ inspected the day of its fatal voyage. Yet hours (4)_____, the Estonia rolled over and sank in a cold, stormy night. It went down (5)_____ quickly that most of those on board, caught in their dark, flooding cabins, had no chance to save themselves.

SubQuestion No : 25

Q.25 Select the most appropriate option to fill in blank no. 5.

- Ans 1. so
 2. such
 3. as
 4. very

Question ID : 65497834662
 Status : Answered
 Chosen Option : 1

Section : Part D Hindi

Q.1 कौन सा शब्द 'केसर' का समानार्थी शब्द नहीं है?

- Ans 1. कदली
 2. कुमकुम
 3. जाफरान
 4. कश्मीरज

Question ID : 65497834666
 Status : Not Answered
 Chosen Option : --

Q.2 'अम्बु' किसका पर्यायवाची है?

- Ans 1. कमल
 2. बादल
 3. जल
 4. समुद्र

Question ID : 65497834682
 Status : Not Answered
 Chosen Option : --

Q.3 दिए गए वाक्य में रेखांकित अंश को प्रतिस्थापित करने के लिए सर्वाधिक उपयुक्त विकल्प का चयन करें।

लोग बड़ी मात्रा में जमा हो गए।

- Ans 1. संख्या
 2. जनसंख्या
 3. ढेर
 4. भीड़

Question ID : 65497834678
 Status : Not Answered
 Chosen Option : --

Q.4 दिए गए वाक्य में रेखांकित खंड को प्रतिस्थापित करने के लिए सर्वाधिक उपयुक्त विकल्प का चयन करें। यदि इसे प्रतिस्थापित करने की आवश्यकता नहीं है, तो विकल्प 'किसी बदलाव की आवश्यकता नहीं है' का चयन करें।

बजट के ऊपर बहस होगी।

- Ans
- 1. से ऊपर बहस होगी।
 - 2. किसी बदलाव की आवश्यकता नहीं है।
 - 3. पर बहस होगी।
 - 4. की बहस होगी।

Question ID : 65497834663
Status : Not Answered
Chosen Option : --

Q.5 दिए गए शब्द का विलोम चुनें।

आहत

- Ans
- 1. विक्षत
 - 2. क्षत
 - 3. अनाहत
 - 4. हत

Question ID : 65497834676
Status : Not Answered
Chosen Option : --

Q.6 दिए गए विकल्पों में से निम्नलिखित शब्द के विलोम शब्द का चयन करें:

उल्लास

- Ans
- 1. प्रसन्नचित
 - 2. उमंग
 - 3. वैमनस्य
 - 4. विषाद

Question ID : 65497834667
Status : Not Answered
Chosen Option : --

Q.7 रिक्त स्थान भरने के लिए सर्वाधिक उपयुक्त शब्द का चयन करें।

वहां की जलवायु मेरे _____ नहीं थी।

- Ans
- 1. अनुमानित
 - 2. अनुसार
 - 3. अनुकूल
 - 4. अनुरूप

Question ID : 65497834669
Status : Not Answered
Chosen Option : --

Q.8 निम्नलिखित चार विकल्पों में से उस विकल्प का चयन करें, जो दिए गए मुहावरे के सही अर्थ को व्यक्त करता है।

आंख का काजल

- Ans 1. अत्यंत प्रिय
 2. दर्द देने वाला
 3. गहरा रंग
 4. सुंदर

Question ID : 65497834668
 Status : Not Answered
 Chosen Option : --

Q.9 दिए गए वाक्यांश के लिए एक शब्द दीजिए।

इन्द्रियों से परे

- Ans 1. इंद्रदेव
 2. अतीन्द्रिय
 3. इन्द्रजीत
 4. ऐन्द्रिक

Question ID : 65497834677
 Status : Not Answered
 Chosen Option : --

Q.10 'नींद उड़ जाना' इस मुहावरे का उचित अर्थ कौन सा है?

- Ans 1. नींद जाती रहना
 2. नींद उचाट करना
 3. अत्यंत शयन करना
 4. जरा भी नींद न आना

Question ID : 65497834664
 Status : Not Answered
 Chosen Option : --

Q.11 दिए गए वाक्यांश के लिए एक शब्द दीजिए।

जिसकी उपमा न हो

- Ans 1. उपमान
 2. उपमाहीन
 3. अनुपम
 4. उपमेय

Question ID : 65497834673
 Status : Not Answered
 Chosen Option : --

Q.12 दिए गए वाक्य का वह भाग ज्ञात करें जिसमें कोई त्रुटि है। यदि कोई त्रुटि नहीं है, तो 'कोई त्रुटि नहीं है' चुनें।

स्वतंत्रता के साथ (1)/ देश की निर्धनता का (2)/ अंत हो जाएगा। (3)/ कोई त्रुटि नहीं है (4)

Ans 1. 1

2. 2

3. 3

4. 4

Question ID : 65497834665

Status : Not Answered

Chosen Option : --

Q.13 सही बर्तनी वाले शब्द का चयन करें।

Ans 1. लिजीये

2. लीजिए

3. लिजिये

4. लीजीए

Question ID : 65497834672

Status : Not Answered

Chosen Option : --

Q.14 'जो कहा न जा सके' वाक्यांश के लिए एक शब्द दीजिए।

Ans 1. कथित

2. अकथित

3. अकथनीय

4. अपठनीय

Question ID : 65497834679

Status : Not Answered

Chosen Option : --

Q.15 दिए गए वाक्य के किस भाग में त्रुटि है?

वस्तुओं की कीमतें बढ़ रही हैं।

Ans 1. बढ़

2. की कीमत

3. वस्तुओं

4. रही हैं।

Question ID : 65497834681

Status : Not Answered

Chosen Option : --

Q.16 सही बर्तनी वाले शब्द का चयन करें।

Ans 1. विनति

2. विनती

3. वीनती

4. वीनति

Question ID : 65497834671

Status : Not Answered

Chosen Option : --

Q.17 दिए गए वाक्य का वह भाग ज्ञात करें जिसमें कोई त्रुटि है। यदि कोई त्रुटि नहीं है, तो 'कोई त्रुटि नहीं है' चुनें।

तमाम देश भर (1)/ में जल्दी ही (2)/ बात फैल गई (3)/ कोई त्रुटि नहीं है (4)

- Ans
- 1. 4
 - 2. 2
 - 3. 3
 - 4. 1

Question ID : 65497834675
Status : Not Answered
Chosen Option : --

Q.18 रिक्त स्थान की पूर्ति करने के लिए सर्वाधिक उपयुक्त शब्द का चयन करें।

मैं केवल _____ चाहती हूँ।

- Ans
- 1. इतना ही
 - 2. इतना भर
 - 3. इतना तक
 - 4. इतना

Question ID : 65497834674
Status : Not Answered
Chosen Option : --

Q.19 दिए गए वाक्य में रेखांकित खंड को प्रतिस्थापित करने के लिए सर्वाधिक उपयुक्त विकल्प का चयन करें। यदि इसे प्रतिस्थापित करने की आवश्यकता नहीं है, तो विकल्प 'किसी बदलाव की आवश्यकता नहीं है' का चयन करें।

पढ़ने के बहाने से शिल्पा इधर आती है।

- Ans
- 1. के बहाने
 - 2. के बहाना से
 - 3. के बहाने म
 - 4. किसी बदलाव की आवश्यकता नहीं है।

Question ID : 65497834670
Status : Not Answered
Chosen Option : --

Q.20 रिक्त स्थान की पूर्ति करने के लिए सर्वाधिक उपयुक्त विकल्प का चयन करें।

अध्यापक को अध्यापन कार्य में _____ होना चाहिए।

- Ans
- 1. प्रवीण
 - 2. दक्ष
 - 3. परमवीर
 - 4. निपुण

Question ID : 65497834680
Status : Not Answered
Chosen Option : --

Comprehension:

दिए गए गद्यांश में कुछ शब्द हटा दिए गए हैं। दिए गए विकल्पों की सहायता से रिक्त स्थानों की पूर्ति करें। प्रत्येक संख्या के लिए सर्वाधिक उपयुक्त विकल्प का चयन करें।

लिपि का (1) _____ रूप चित्रलिपि रहा है। (2) _____ में मानव ने (3) _____ की दीवारों पर तथा अन्य वस्तुओं पर जो (4) _____ चित्र बनाये, उन चित्रों से ही (5) _____ प्रारंभ हुई।

SubQuestion No : 21

Q.21 गद्यांश के रिक्त स्थान (1) के लिए सर्वाधिक उपयुक्त शब्द होगा-

- Ans** 1. सर्वोच्च
 2. प्रारम्भिक
 3. उत्तम
 4. उत्कृष्ट

Question ID : **65497834684**
 Status : **Not Answered**
 Chosen Option : --

Comprehension:

दिए गए गद्यांश में कुछ शब्द हटा दिए गए हैं। दिए गए विकल्पों की सहायता से रिक्त स्थानों की पूर्ति करें। प्रत्येक संख्या के लिए सर्वाधिक उपयुक्त विकल्प का चयन करें।

लिपि का (1) _____ रूप चित्रलिपि रहा है। (2) _____ में मानव ने (3) _____ की दीवारों पर तथा अन्य वस्तुओं पर जो (4) _____ चित्र बनाये, उन चित्रों से ही (5) _____ प्रारंभ हुई।

SubQuestion No : 22

Q.22 गद्यांश के रिक्त स्थान (2) के लिए सर्वाधिक उपयुक्त शब्द होगा-

- Ans** 1. मध्यकाल
 2. आधुनिककाल
 3. वर्तमानकाल
 4. प्राचीनकाल

Question ID : **65497834685**
 Status : **Not Answered**
 Chosen Option : --

Comprehension:

दिए गए गद्यांश में कुछ शब्द हटा दिए गए हैं। दिए गए विकल्पों की सहायता से रिक्त स्थानों की पूर्ति करें। प्रत्येक संख्या के लिए सर्वाधिक उपयुक्त विकल्प का चयन करें।

लिपि का (1) _____ रूप चित्रलिपि रहा है। (2) _____ में मानव ने (3) _____ की दीवारों पर तथा अन्य वस्तुओं पर जो (4) _____ चित्र बनाये, उन चित्रों से ही (5) _____ प्रारंभ हुई।

SubQuestion No : 23

Q.23 गद्यांश के रिक्त स्थान (3) के लिए सर्वाधिक उपयुक्त शब्द होगा-

- Ans** 1. गुफाओं
 2. जंगलों
 3. पहाड़ों
 4. वृक्षों

Question ID : **65497834686**
 Status : **Not Answered**
 Chosen Option : --

Comprehension:

दिए गए गद्यांश में कुछ शब्द हटा दिए गए हैं। दिए गए विकल्पों की सहायता से रिक्त स्थानों की पूर्ति करें। प्रत्येक संख्या के लिए सर्वाधिक उपयुक्त विकल्प का चयन करें।

लिपि का (1) _____ रूप चित्रलिपि रहा है। (2) _____ में मानव ने (3) _____ की दीवारों पर तथा अन्य वस्तुओं पर जो (4) _____ चित्र बनाये, उन चित्रों से ही (5) _____ प्रारंभ हुई।

SubQuestion No : 24

Q.24 गद्यांश के रिक्त स्थान (4) के लिए सर्वाधिक उपयुक्त शब्द होगा-

- Ans 1. टेढ़े-मेढ़े
 2. उल्टे-सीधे
 3. ऊबड़-खाबड़
 4. हल्के-फुल्के

Question ID : 65497834687
 Status : Not Answered
 Chosen Option : --

Comprehension:

दिए गए गद्यांश में कुछ शब्द हटा दिए गए हैं। दिए गए विकल्पों की सहायता से रिक्त स्थानों की पूर्ति करें। प्रत्येक संख्या के लिए सर्वाधिक उपयुक्त विकल्प का चयन करें।

लिपि का (1) _____ रूप चित्रलिपि रहा है। (2) _____ में मानव ने (3) _____ की दीवारों पर तथा अन्य वस्तुओं पर जो (4) _____ चित्र बनाये, उन चित्रों से ही (5) _____ प्रारंभ हुई।

SubQuestion No : 25

Q.25 गद्यांश के रिक्त स्थान (5) के लिए सर्वाधिक उपयुक्त शब्द होगा-

- Ans 1. चित्र
 2. वाक
 3. लिपि
 4. भाषा

Question ID : 65497834688
 Status : Not Answered
 Chosen Option : --

Exam Date	22/11/2021
Exam Time :	4:00 PM - 5:30 PM
Subject	Constable GD 2021

Section : Part A General Intelligence and Reasoning

Q.1 In a certain code language, VOLLEY is written as WpMMfZ, and DON is written as EpO. How will DENSITY be written in that language?

- Ans
- 1. EFotJUy
 - 2. EEoTJUz
 - 3. FfOtJuZ
 - 4. EfOTJUZ

Question ID : 65497831664
 Status : Answered
 Chosen Option : 4

Q.2 Select the letter-cluster from among the given options that can replace the question mark (?) in the following series.

NKI, PMK, ROM, ?

- Ans
- 1. TRP
 - 2. TOM
 - 3. SPN
 - 4. TQO

Question ID : 65497831641
 Status : Answered
 Chosen Option : 4

Q.3 Which two numbers (NOT digits) need to be interchanged to make the following equation correct?

$$3 \times 45 \div 5 + 7 - 12 = 70$$

- Ans
- 1. 3 and 5
 - 2. 5 and 12
 - 3. 5 and 7
 - 4. 3 and 7

Question ID : 65497831647
 Status : Answered
 Chosen Option : 1

Q.4 Select the option that is related to the third term in the same way as the second term is related to the first term.

TANGY : GZMTB :: PRIEST : ?

- Ans
- 1. LIRVJG
 - 2. KIRVHG
 - 3. KJSVHG
 - 4. KIRUHF

Question ID : 65497831663
 Status : Answered
 Chosen Option : 2

Q.5 Select the option in which the given figure is embedded (rotation is NOT allowed).



Ans

- 1.
- 2.
- 3.
- 4.

KD Job Updates

Question ID : 65497831649
 Status : Answered
 Chosen Option : 1

Q.6 In a certain code language, KING is coded as 1012810131568. How will ROSE be coded in that language?

- Ans
- 1. 17191614201864
 - 2. 19171614192035
 - 3. 17181416192056
 - 4. 17191416182046

Question ID : 65497831655
 Status : Answered
 Chosen Option : 4

Q.7 Select the correct option that indicates the arrangement of the given words in the order in which they appear in an English dictionary.

1. Power
2. Piece
3. Peace
4. Poem
5. Palm

- Ans
- 1. 5, 4, 3, 2, 1
 - 2. 2, 3, 1, 5, 4
 - 3. 1, 2, 3, 4, 5
 - 4. 5, 3, 2, 4, 1

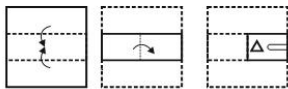
Question ID : 65497831650
 Status : Answered
 Chosen Option : 4

Q.8 'Honey' is related to 'Bees' in the same way as 'Sugar' is related to '_____'.
 Ans

- 1. Cake
- 2. Sugarcane
- 3. Juicer
- 4. Sweet

Question ID : 65497831642
 Status : Answered
 Chosen Option : 2

Q.9 The sequence of folding a piece of paper and the manner in which the folded paper has been cut is shown in the following figures. How would this paper look when unfolded?



Ans

- 1.
- 2.
- 3.
- 4.

Question ID : 65497831662
 Status : Answered
 Chosen Option : 1

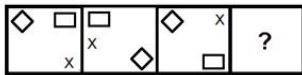
Q.10 Select the number from among the given options that can replace the question mark (?) in the following series.

6, 8, 20, 50, 106, ?

- Ans
- 1. 212
 - 2. 280
 - 3. 196
 - 4. 218

Question ID : 65497831656
 Status : Answered
 Chosen Option : 3

Q.11 Select the figure from among the given options that can replace the question mark (?) in the following series.



Ans

- 1.
- 2.
- 3.
- 4.

Question ID : 65497831653
 Status : Answered
 Chosen Option : 4

Q.12 At the end of a conference, all the 30 people present shake hands with each other once. How many handshakes will there be altogether?

- Ans
- 1. 60
 - 2. 450
 - 3. 435
 - 4. 300

Question ID : 65497831661
 Status : Answered
 Chosen Option : 2

Q.13 A, B, C और D नाम के चार मित्र एक रेस्तरा में एक वर्गाकार मेज के चारों ओर बैठे हुए हैं। यदि B, A के ठीक सामने और D के विकर्णतः सामने बैठा हुआ है, तो C के सामने कौन बैठा है?

- Ans 1. D
 2. A
 3. कोई नहीं
 4. B

Question ID : 65497831643
 Status : Answered
 Chosen Option : 1

Q.14 Select the correct mirror image of the given figure when the mirror is placed to the right side of the figure.

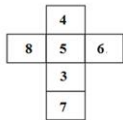


- Ans 1.
 2.
 3.
 4.

KD Job Updates

Question ID : 65497831657
 Status : Answered
 Chosen Option : 1

Q.15 A cube is made by folding the given sheet. In the cube so formed, which number will be on the face opposite to the face having the number '7'?



- Ans 1. 4
 2. 5
 3. 6
 4. 8

Question ID : 65497831648
 Status : Answered
 Chosen Option : 1

Q.16 Study the given pattern carefully and select the number that can replace the question mark (?) in it.

10 13 17
12 11 ?
160 185 235

- Ans 1. 15
 2. 13
 3. 10
 4. 17

Question ID : 65497831660
Status : Answered
Chosen Option : 2

Q.17 Four letter-clusters have been given, out of which three are alike in some manner and one is different. Select the letter-cluster that is different.

- Ans 1. ZTG
 2. IDE
 3. RDN
 4. USB

Question ID : 65497831654
Status : Answered
Chosen Option : 1

Q.18 Identify the number that does NOT belong to the following series.

18, 27, 35, 45, 54

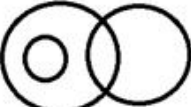


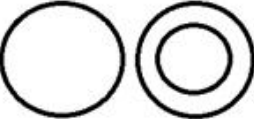
- Ans 1. 18
 2. 45
 3. 54
 4. 35

Question ID : 65497831652
Status : Answered
Chosen Option : 4

Q.19 Select the Venn diagram that best represents the relationship between the following classes.

Police, Males, Husbands

Ans

- 1. 
- 2. 
- 3. 
- 4. 

Question ID : 65497831644
 Status : Answered
 Chosen Option : 3

Q.20 If Samaira is the daughter of my father's mother's only son, how is Samaira related to me?

- Ans
- 1. Mother
 - 2. Sister
 - 3. Niece
 - 4. Daughter

Question ID : 65497831665
 Status : Answered
 Chosen Option : 2

Q.21 Read the given statements and conclusions carefully. Assuming that the information given in the statements is true, even if it appears to be at variance with commonly known facts, decide which of the given conclusions logically follow(s) from the statements.

Statements:
 All fruits are flowers.
 Some fruits are kiwis.

Conclusions:
 I. Some flowers are kiwis.
 II. All kiwis are fruits.

- Ans
- 1. Only conclusion II follows.
 - 2. Both conclusions I and II follow.
 - 3. Neither conclusion I nor II follows.
 - 4. Only conclusion I follows.

Question ID : 65497831659
 Status : Answered
 Chosen Option : 4

Q.22 Select the combination of letters that when sequentially placed in the blanks of the given series will complete the series.

BCB_BC_IB_BI

- Ans
- 1. BCI
 - 2. BCC
 - 3. CBI
 - 4. IBC

Question ID : 65497831651
Status : Answered
Chosen Option : 4

Q.23 Six friends A, B, C, D, E and F, have different heights. A is taller than only C and E. B is shorter than D but D is not the tallest among them. Who is the tallest among them all?

- Ans
- 1. C
 - 2. E
 - 3. A
 - 4. F

Question ID : 65497831645
Status : Answered
Chosen Option : 4

Q.24 In a certain code language, 'ORACLE' is written as 'HSVUXG' and 'DAVID' is written as 'BVJFB'. How will 'VIDEO' be written in that language?

- Ans
- 1. JFBGH
 - 2. GFBJH
 - 3. JFGBH
 - 4. JBFGH

Question ID : 65497831658
Status : Answered
Chosen Option : 1

Q.25 Select the option that is related to the third number in the same way as the second number is related to the first number.

6 : 216 :: 8 : ?

- Ans
- 1. 64
 - 2. 154
 - 3. 1024
 - 4. 512

Question ID : 65497831646
Status : Answered
Chosen Option : 4

Q.1 जीव-जंतुओं की संरचना, स्वरूप और पारिस्थितिक वितरण के वैज्ञानिक अध्ययन को _____ कहा जाता है।

- Ans
- 1. जंतु विज्ञान (zoology)
 - 2. वनस्पति विज्ञान (botany)
 - 3. छिपकली विज्ञान (saurology)
 - 4. नृजाति विज्ञान (ethnology)

Question ID : 65497831674
Status : Answered
Chosen Option : 1

Q.2 Which state has the second-highest number of Lok Sabha seats, after Uttar Pradesh?

- Ans
- 1. Tamil Nadu
 - 2. Andhra Pradesh
 - 3. Bihar
 - 4. Maharashtra

Question ID : 65497831667
Status : Answered
Chosen Option : 3

Q.3 Who is the author of the book 'Exam Warriors'?

- Ans
- 1. Vikram Seth
 - 2. Bibek Debroy
 - 3. Abhishek Manu Singhvi
 - 4. Narendra Modi

Question ID : 65497831680
Status : Answered
Chosen Option : 2

Q.4 मृदा प्रबंधन और फसल चक्र, खरपतवार और कीट नियंत्रण और फसलों की वृद्धि और खाद्य उत्पादन में महत्वपूर्ण भूमिका निभाने वाली जलवायु के अध्ययन से संबंधित विज्ञान क्या कहलाता है?

- Ans
- 1. कोशिका विज्ञान (Cytology)
 - 2. कृषि विज्ञान (Agronomy)
 - 3. शरीर-रचना विज्ञान (Anatomy)
 - 4. घास विज्ञान (Agrostology)

Question ID : 65497831677
Status : Answered
Chosen Option : 2

Q.5 Who among the following was appointed as Goodwill Ambassador of United Nations Development Programme (UNDP) in September 2020?

- Ans
- 1. Yemi Alade
 - 2. Michelle Obama
 - 3. Padma Lakshmi
 - 4. M. Nethra

Question ID : 65497831673
Status : Not Answered
Chosen Option : --

Q.6 As per Census 2011, which of the following states' sex ratio is less than 900?

- Ans 1. Haryana
 2. Assam
 3. Jharkhand
 4. Madhya Pradesh

Question ID : 65497831679
 Status : Answered
 Chosen Option : 1

Q.7 In which of the following years was the Hindu Widows' Remarriage Act enacted?

- Ans 1. 1856
 2. 1890
 3. 1906
 4. 1934

Question ID : 65497831675
 Status : Not Answered
 Chosen Option : --

Q.8 People in ancient India believed that when the '_____' ritual was performed with the help of Brahmanas, it led to the rebirth of the sacrificer as a Kshatriya, even if he was not one by birth.

- Ans 1. Samavaj-tana
 2. Upanayana
 3. Medhajanana
 4. Hiranya-garbha

Question ID : 65497831685
 Status : Answered
 Chosen Option : 4

Q.9 Forty years after disbanding, music group _____ announced its return in September 2021.

- Ans 1. Rolling Stones
 2. Eagles
 3. Led Zeppelin
 4. ABBA

Question ID : 65497831690
 Status : Not Answered
 Chosen Option : --

Q.10 पृथ्वी की सतह के नीचे सबसे नजदीकी खनिज केवल _____ प्रक्रिया द्वारा खोदकर निकाले जा सकते जाते हैं।

- Ans 1. खुदाई (ड्रिलिंग)
 2. उल्खनन (कॉरीइंग)
 3. कूपकी खनन (शाफ्ट माइनिंग)
 4. विवृत खनन (ओपन कास्ट माइनिंग)

Question ID : 65497831682
 Status : Answered
 Chosen Option : 2

Q.11 The Open Era in tennis began in _____ when the Grand Slam tournaments agreed to allow professional players to compete with amateurs.

- Ans
- 1. 1958
 - 2. 1948
 - 3. 1968
 - 4. 1938

Question ID : 65497831669
Status : Not Answered
Chosen Option : --

Q.12 The Lebang Boomani Dance is part of the folk dance repertoire of which of these Indian states?

- Ans
- 1. Tripura
 - 2. Odisha
 - 3. Maharashtra
 - 4. Kerala

Question ID : 65497831678
Status : Not Answered
Chosen Option : --

Q.13 अपघटित पारिस्थितिकी तंत्र और पारिस्थितिक स्थिरता के संरक्षण और पुनर्जनन के माध्यम से एक क्षेत्र के विकास की प्रक्रिया _____ कहलाती है।

- Ans
- 1. पारिस्थितिक-विकास
 - 2. सामाजिक विकास
 - 3. सामाजिक स्थिरता
 - 4. स्थायी विकास

Question ID : 65497831671
Status : Answered
Chosen Option : 1

Q.14 When is Women's Entrepreneurship Day observed every year?

- Ans
- 1. 10 October
 - 2. 19 November
 - 3. 25 November
 - 4. 14 September

Question ID : 65497831676
Status : Not Answered
Chosen Option : --

Q.15 Which of the following is awarded to the coaches for producing medal winners at prestigious international sports events?

- Ans
- 1. Dhyan Chand Award
 - 2. Dronacharya Award
 - 3. Rajiv Gandhi Khel Ratna
 - 4. Arjuna Award

Question ID : 65497831683
Status : Answered
Chosen Option : 2

Q.16 The 9th edition of the International Sand Art Festival was organised in December 2020 in:

- Ans 1. Odisha
 2. Tamil Nadu
 3. Maharashtra
 4. Andhra Pradesh

Question ID : 65497831668
Status : Not Answered
Chosen Option : --

Q.17 How many pairs of chromosomes are present in human beings?

- Ans 1. 23
 2. 26
 3. 19
 4. 22

Question ID : 65497831672
Status : Answered
Chosen Option : 1

Q.18 The National Sports University, Imphal is a central university established under an Act passed in the year _____.

- Ans 1. 2014
 2. 2018
 3. 2015
 4. 2019

Question ID : 65497831689
Status : Not Answered
Chosen Option : --

Q.19 What is the percentage hike in defence expenditure in the Budget 2020-2021 as against the allocation in the previous financial year?

- Ans 1. 6.1%
 2. 4.3%
 3. 7.4%
 4. 5.8%

Question ID : 65497831666
Status : Answered
Chosen Option : 4

Q.20 In which of the following years was Sanchi declared as a UNESCO World Heritage Site?

- Ans 1. 1989
 2. 1999
 3. 1967
 4. 2014

Question ID : 65497831670
Status : Not Answered
Chosen Option : --

Q.21 In relation to banking, CTS is an acronym for _____.

- Ans 1. Cheque Truncation System
 2. Corporate Trade Schedule
 3. Credit Transfer Statement
 4. Cash Transaction Scrutiny

Question ID : 65497831686
Status : Answered
Chosen Option : 3

Q.22 Who among the following persons led the 'No Tax Campaign' against the British after the floods in Khera (Khaira/Kaira) in 1918?

- Ans 1. Morarji Desai
 2. Tribhuvandas Patel
 3. Mahadev Desai
 4. Vallabhbhai Patel

Question ID : 65497831688
Status : Answered
Chosen Option : 1

Q.23 In February 2020, the Board of the Reserve Bank of India recommended that its accounting year be changed from _____ to April - March.

- Ans 1. September - August
 2. January - December
 3. October - September
 4. July - June

Question ID : 65497831684
Status : Answered
Chosen Option : 4

Q.24 With which of the following games/sports is the William Jones Cup associated?

- Ans 1. Billiards
 2. Basketball
 3. Boxing
 4. Cricket

Question ID : 65497831681
Status : Answered
Chosen Option : 1

Q.25 The _____ empire was the first pan-Indian empire that covered most of the Indian subcontinent.

- Ans 1. Chola
 2. Kushan
 3. Mauryan
 4. Gupta

Question ID : 65497831687
Status : Not Answered
Chosen Option : --

Q.1 The ratio of two numbers x and y is $4 : 7$. If 6 is added to x and 7 is subtracted from y , then their ratio becomes $3 : 4$.
What is the difference between x and y ?

- Ans**
- 1. 36
 - 2. 30
 - 3. 24
 - 4. 27

Question ID : 65497831709
Status : Answered
Chosen Option : 4

Q.2 The curved surface area of a right circular cylinder of height 14 cm is 176 cm². What is the area (in cm²) of the base of the cylinder? (Take $\pi = \frac{22}{7}$)

- Ans**
- 1. $\frac{44}{7}$
 - 2. $\frac{176}{7}$
 - 3. $\frac{66}{7}$
 - 4. $\frac{88}{7}$

Question ID : 65497831711
Status : Answered
Chosen Option : 4

Q.3 7 men can pack 14 boxes in 6 days by working for 7 hours a day. How many days will be required by 14 men to pack 18 boxes, if they work for 9 hours a day?

- Ans**
- 1. 2
 - 2. 5
 - 3. 4
 - 4. 3

Question ID : 65497831694
Status : Answered
Chosen Option : 4

Q.4 If HCF of 328, 451 and 697 is x , then the value of x lies between:

- Ans**
- 1. 44 and 48
 - 2. 40 and 44
 - 3. 36 and 40
 - 4. 48 and 52

Question ID : 65497831707
Status : Answered
Chosen Option : 2

Q.5 A sum amounts to ₹9,261 in 3 years at 5% per annum, interest compounded annually. What is the simple interest (in ₹) on the same sum for $3\frac{3}{4}$ years at the same rate of interest?

- Ans**
- 1. ₹1,350
 - 2. ₹1,500
 - 3. ₹1,620
 - 4. ₹1,560

Question ID : 65497831710
Status : Answered
Chosen Option : 2

Q.6 A sum of ₹10500 amounts to ₹12705 in 2 years at $x\%$ p.a., when the interest is compounded annually. The same sum will amount (in ₹) to what at $2x\%$ p.a. in $1\frac{1}{2}$ years, when interest compounded half yearly?

- Ans**
- 1. 11297
 - 2. 17395.75
 - 3. 13975.50
 - 4. 19753.25

Question ID : 65497831697
Status : Answered
Chosen Option : 3

Q.7 A person travels equal distances at speeds of 3 km/h, 4 km/h, 5 km/h and 6 km/h, and takes a total time of 3 hours 48 minutes. The total distance (in km) is:

- Ans**
- 1. 16
 - 2. 4
 - 3. 12
 - 4. 20

Question ID : 65497831695
Status : Answered
Chosen Option : 2

Q.8 Pipes A, B and C can fill a tank in 10, 15 and 18 hours, respectively. A and C are opened for 5 hours, then only pipe A is closed and B is opened at the same time (with C). The total time taken to fill the tank completely is:

- Ans**
- 1. $3\frac{2}{3}$ hours
 - 2. $6\frac{9}{11}$ hours
 - 3. $5\frac{8}{11}$ hours
 - 4. $2\frac{1}{3}$ hours

Question ID : 65497831715
Status : Answered
Chosen Option : 2

Q.9 If a sum of ₹644 is divided into three parts proportional to $\frac{1}{2} : \frac{2}{3} : \frac{3}{4}$, then the first part will be:

- Ans**
- 1. ₹322
 - 2. ₹168
 - 3. ₹280
 - 4. ₹186

Question ID : 65497831704
Status : Answered
Chosen Option : 2

Q.10 The surface areas of three coterminal faces of a cuboid are 5 cm^2 , 16 cm^2 and 20 cm^2 respectively. Find the volume of the cuboid.

- Ans**
- 1. 45 cm^3
 - 2. 50 cm^3
 - 3. 30 cm^3
 - 4. 40 cm^3

Question ID : 65497831705
Status : Answered
Chosen Option : 4

Q.11 Radha saves 28% of her income. If her expenditure increases by 25% and savings increase by 30%, then by what percentage will her income increase?

- Ans**
- 1. 27.6%
 - 2. 26.4%
 - 3. 27%
 - 4. 25%

Question ID : 65497831708
Status : Answered
Chosen Option : 2

Q.12 A shopkeeper decides to sell a certain item at a certain price. He tags the price on the item by increasing the decided price by 45%. While selling the item, he offers 40% discount. Find how much more or less he gets on the decided price.

- Ans**
- 1. ₹87 less
 - 2. ₹13 less
 - 3. ₹87 more
 - 4. ₹13 more

Question ID : 65497831706
Status : Answered
Chosen Option : 2

Q.13 The average of 37 numbers is 49. The average of the first 21 numbers is 43.8 and that of the last 17 numbers is 55.6. If the 21st number is excluded, then what is the average of the remaining numbers (correct to one decimal place)?

- Ans**
- 1. 53.5
 - 2. 48.9
 - 3. 49.7
 - 4. 47.6

Question ID : 65497831691
Status : Answered
Chosen Option : 2

Q.14 Vimala took a loan of ₹7,200 on simple interest for as many years as the rate of interest. If she paid ₹5,832 as interest at the end of the loan period, then the rate of interest is:

- Ans**
- 1. 8.5%
 - 2. 9%
 - 3. 12%
 - 4. 8%

Question ID : 65497831701
Status : Answered
Chosen Option : 2

Q.15 Find the value of $9\frac{4}{15} \div \frac{7}{8}$ of $\left(6\frac{1}{5} + 3\frac{2}{5}\right) - \left(\frac{2}{21} + \frac{1}{126}\right)$

- Ans**
- 1. 1
 - 2. 3
 - 3. 10
 - 4. 5

Question ID : 65497831702
Status : Answered
Chosen Option : 1

Q.16 The LCM of two positive numbers is 13 times their HCF. The sum of HCF and LCM is 252. If one number is 54, then the other number is:

- Ans**
- 1. 73
 - 2. 78
 - 3. 68
 - 4. 63

Question ID : 65497831698
Status : Answered
Chosen Option : 2

Q.17 Reema sold a suit at a profit of 10.5%. If she had sold it for ₹70 more, then the profit would have been 14%. The initial selling price (in ₹) of the suit is:

- Ans**
- 1. 2,350
 - 2. 2,140
 - 3. 2,210
 - 4. 2,280

Question ID : 65497831696
Status : Answered
Chosen Option : 3

Q.18 Out of six numbers A, B, C, D, E and F, the average of first five numbers A, B, C, D and E is greater than the average of last five numbers B, C, D, E and F by 26. The difference between A and F is:

- Ans**
- 1. 130
 - 2. 125
 - 3. 140
 - 4. 120

Question ID : 65497831699
Status : Answered
Chosen Option : 1

Q.19 The value of $72 \div 16 \text{ of } 3 - [28 \div 6 \text{ of } 4 - 20 \div 7 \times (23 - 37) - 41] \times 1\frac{1}{2}$ is:

- Ans**
- 1. 1
 - 2. $\frac{5}{8}$
 - 3. $\frac{3}{2}$
 - 4. $\frac{5}{4}$

Question ID : 65497831713
Status : Answered
Chosen Option : 4

Q.20 In a college election, Seema and Geeta got the votes in the ratio of 4 : 5 of the total valid votes. If 19% are invalid votes out of 15000 votes, then the difference of the votes polled in favour of Seema and Geeta is:

- Ans**
- 1. 1500
 - 2. 1150
 - 3. 1800
 - 4. 1350

Question ID : 65497831693
Status : Answered
Chosen Option : 4

Q.21 Ravi gains 12.5% by selling an article for ₹157.50. If he sells it for ₹147, then what is his loss/gain percentage?

- Ans**
- 1. Loss 5%
 - 2. Gain 5%
 - 3. Gain 10.5%
 - 4. Loss 10.5%

Question ID : 65497831714
Status : Answered
Chosen Option : 2

Q.22 Madhu bought 35 kg of sugar for ₹1,470. She sold it at a loss equal to the selling price of 5 kg of it. What is the selling price (in ₹) of 8 kg of sugar?

- Ans**
- 1. 296
 - 2. 288
 - 3. 300
 - 4. 294

Question ID : 65497831712
Status : Answered
Chosen Option : 2

Q.23 A train travels from place A to place B at a speed of 90 km/h and returns at a speed of 75 km/h. If it takes a total time of $14\frac{2}{3}$ hours, the distance between the places A and B is:

- Ans**
- 1. 600 km
 - 2. 560 km
 - 3. 620 km
 - 4. 580 km

Question ID : 65497831703
Status : Answered
Chosen Option : 1

Q.24 A reduction of $12\frac{1}{2}$ % in the price of wheat enables a person to buy $2\frac{1}{2}$ kg more for ₹280. Initially, how much wheat (in kg) was the person able to buy?

- Ans**
- 1. 15
 - 2. 12.5
 - 3. 17.5
 - 4. 20

Question ID : 65497831692
Status : Answered
Chosen Option : 3

Q.25 A sum of ₹980 is divided among A, B and C such that A gets $\frac{3}{7}$ of B's share and C gets 75% of A's share. The share of C is:

- Ans
- 1. ₹160
 - 2. ₹250
 - 3. ₹180
 - 4. ₹280

Question ID : 65497831700
 Status : Answered
 Chosen Option : 3

Section : Part D English

Q.1 Select the most appropriate option to fill in the blank.

Radha was extremely _____ about the welfare of her parents.

- Ans
- 1. impatient
 - 2. eager
 - 3. intense
 - 4. anxious

Question ID : 65497831721
 Status : Answered
 Chosen Option : 4

Q.2 Select the most appropriate ANTONYM of the given word.

Defend

- Ans
- 1. Abandon
 - 2. Tarnish
 - 3. Adjourn
 - 4. Derange

Question ID : 65497831718
 Status : Answered
 Chosen Option : 2

Q.3 Select the most appropriate option that can substitute the underlined segment in the given sentence. If there is no need to substitute it, select 'No substitution required'.

All the mangoes is sweet; you should try one.

- Ans
- 1. All the mangoes are sweet
 - 2. No substitution required
 - 3. All mangoes sweet
 - 4. All the mangoes sweet

Question ID : 65497831729
 Status : Answered
 Chosen Option : 1

Q.4 Select the most appropriate option to fill in the blank.

If you do not return my money, I will _____ you to court.

- Ans
- 1. push
 - 2. lift
 - 3. carry
 - 4. drag

Question ID : 65497831731
Status : Answered
Chosen Option : 4

Q.5 The following sentence has been split into four segments. Identify the segment that contains a grammatical error.

These children / are attended / yoga classes / regularly.

- Ans
- 1. yoga classes
 - 2. regularly
 - 3. These children
 - 4. are attended

Question ID : 65497831726
Status : Answered
Chosen Option : 4

Q.6 Select the most appropriate ANTONYM of the given word.

Petty

- Ans
- 1. Quick
 - 2. Dull
 - 3. Big
 - 4. Light

Question ID : 65497831723
Status : Answered
Chosen Option : 3

Q.7 The following sentence has been divided into parts. One of them contains an error. Select the part that contains the error from the given options.

Neither the guests / nor the host / were dressed appropriately / for the party.

- Ans
- 1. Neither the guests
 - 2. were dressed appropriately
 - 3. nor the host
 - 4. for the party

Question ID : 65497831722
Status : Answered
Chosen Option : 2

Q.8 Select the most appropriate option that can substitute the underlined word in the given sentence.

The Maldives is one of the few places in the world where ancient pleasure can be derived from doing nothing.

- Ans
- 1. curt
 - 2. bustling
 - 3. tremendous
 - 4. prosperous

Question ID : 65497831717
 Status : Answered
 Chosen Option : 3

Q.9 Select the INCORRECTLY spelt word.

- Ans
- 1. Sumptuous
 - 2. Prosperous
 - 3. Pretious
 - 4. Pompous

Question ID : 65497831725
 Status : Answered
 Chosen Option : 1

Q.10 Select the most appropriate synonym of the given word.

Marvellous

- Ans
- 1. Dangerous
 - 2. Childish
 - 3. Wonderful
 - 4. Innocent

Question ID : 65497831727
 Status : Answered
 Chosen Option : 3

Q.11 The following sentence has been split into four segments. Identify the segment that contains a grammatical error.

Plants that grow / in deserts / do not requires / much water.

- Ans
- 1. do not requires
 - 2. much water
 - 3. in deserts
 - 4. Plants that grow

Question ID : 65497831733
 Status : Answered
 Chosen Option : 1

Q.12 Select the option that can be used as a one-word substitute for the given group of words.

One who travels on foot

- Ans
- 1. Visitor
 - 2. Traveller
 - 3. Tourist
 - 4. Pedestrian

Question ID : 65497831724
Status : Answered
Chosen Option : 4

Q.13 Select the option that can be used as a one-word substitute for the given group of words.

A cage for keeping rabbits

- Ans
- 1. Hutch
 - 2. Lair
 - 3. Apiary
 - 4. Kennel

Question ID : 65497831735
Status : Answered
Chosen Option : 3

Q.14 Select the option that can be used as a one-word substitute for the given group of words.

A spider's home

- Ans
- 1. Hole
 - 2. Den
 - 3. Cobweb
 - 4. Hive

Question ID : 65497831716
Status : Answered
Chosen Option : 4

Q.15 Select the INCORRECTLY spelt word.

- Ans
- 1. Drainage
 - 2. Opening
 - 3. Spoonful
 - 4. Vegeteble

Question ID : 65497831720
Status : Answered
Chosen Option : 4

Q.16 Select the most appropriate meaning of the given idiom.

Not breathe a word

- Ans
- 1. To be quiet not knowing what to say
 - 2. To be quiet because you are angry
 - 3. To decide not to talk to someone
 - 4. To remain silent about some secret

Question ID : 65497831730
Status : Answered
Chosen Option : 1

Q.17 Select the most appropriate meaning of the given idiom.

To give up the ghost

- Ans
- 1. To pretend to be a ghost
 - 2. To scare away a ghost
 - 3. To stop working
 - 4. To speak lies

Question ID : 65497831728
Status : Answered
Chosen Option : 3

Q.18 Select the most appropriate SYNONYM of the given word.

Choke

- Ans
- 1. Hack
 - 2. Block
 - 3. Slash
 - 4. Chop

Question ID : 65497831734
Status : Answered
Chosen Option : 2

Q.19 Select the most appropriate option to fill in the blank.

Social distancing should be practiced in _____ with other everyday preventive actions.

- Ans
- 1. comprehension
 - 2. understanding
 - 3. arrangement
 - 4. combination

Question ID : 65497831719
Status : Answered
Chosen Option : 1

Q.20 Select the option that will improve the underlined part of the given sentence. In case no improvement is needed, select 'No improvement required'.

Please walk carefully unless you should hurt yourself.

- Ans 1. or you might
 2. No improvement required
 3. unless you will
 4. so you should

Question ID : 65497831732
 Status : Answered
 Chosen Option : 3

Comprehension:

In the following passage, some words have been deleted. Read the passage carefully and select the most appropriate option to fill in each blank.

Consumption of junk and fast food is the main (1)_____ of obesity in teenagers. Large intake of high-calorie and low-nutrient food leads to (2)_____ weight gain. A number of health issues arise out of it. Obesity can also result in (3)_____ problems like low self-esteem and low confidence. It can also lead to laziness and inactiveness among teens. Junk food and soft drinks should be (4)_____ with lots of fruits, vegetables and whole grains in the diet. The best way to control obesity is to do (5)_____ physical exercise.

SubQuestion No : 21

Q.21 Select the most appropriate option to fill in blank no. 1.

- Ans 1. result
 2. effect
 3. cause
 4. event

Question ID : 65497831737
 Status : Answered
 Chosen Option : 3

Comprehension:

In the following passage, some words have been deleted. Read the passage carefully and select the most appropriate option to fill in each blank.

Consumption of junk and fast food is the main (1)_____ of obesity in teenagers. Large intake of high-calorie and low-nutrient food leads to (2)_____ weight gain. A number of health issues arise out of it. Obesity can also result in (3)_____ problems like low self-esteem and low confidence. It can also lead to laziness and inactiveness among teens. Junk food and soft drinks should be (4)_____ with lots of fruits, vegetables and whole grains in the diet. The best way to control obesity is to do (5)_____ physical exercise.

SubQuestion No : 22

Q.22 Select the most appropriate option to fill in blank no. 2.

- Ans 1. insignificant
 2. unnecessary
 3. irrelevant
 4. necessary

Question ID : 65497831738
 Status : Answered
 Chosen Option : 2

Comprehension:

In the following passage, some words have been deleted. Read the passage carefully and select the most appropriate option to fill in each blank.

Consumption of junk and fast food is the main (1)_____ of obesity in teenagers. Large intake of high-calorie and low-nutrient food leads to (2)_____ weight gain. A number of health issues arise out of it. Obesity can also result in (3)_____ problems like low self-esteem and low confidence. It can also lead to laziness and inactiveness among teens. Junk food and soft drinks should be (4)_____ with lots of fruits, vegetables and whole grains in the diet. The best way to control obesity is to do (5)_____ physical exercise.

SubQuestion No : 23

Q.23 Select the most appropriate option to fill in blank no. 3.

- Ans 1. physiological
 2. psychological
 3. political
 4. mental

Question ID : 65497831739
 Status : Answered
 Chosen Option : 2

Comprehension:

In the following passage, some words have been deleted. Read the passage carefully and select the most appropriate option to fill in each blank.

Consumption of junk and fast food is the main (1)_____ of obesity in teenagers. Large intake of high-calorie and low-nutrient food leads to (2)_____ weight gain. A number of health issues arise out of it. Obesity can also result in (3)_____ problems like low self-esteem and low confidence. It can also lead to laziness and inactiveness among teens. Junk food and soft drinks should be (4)_____ with lots of fruits, vegetables and whole grains in the diet. The best way to control obesity is to do (5)_____ physical exercise.

SubQuestion No : 24

Q.24 Select the most appropriate option to fill in blank no. 4.

- Ans 1. altered
 2. exchanged
 3. placed
 4. substituted

Question ID : 65497831740
 Status : Answered
 Chosen Option : 4

Comprehension:

In the following passage, some words have been deleted. Read the passage carefully and select the most appropriate option to fill in each blank.

Consumption of junk and fast food is the main (1)_____ of obesity in teenagers. Large intake of high-calorie and low-nutrient food leads to (2)_____ weight gain. A number of health issues arise out of it. Obesity can also result in (3)_____ problems like low self-esteem and low confidence. It can also lead to laziness and inactiveness among teens. Junk food and soft drinks should be (4)_____ with lots of fruits, vegetables and whole grains in the diet. The best way to control obesity is to do (5)_____ physical exercise.

SubQuestion No : 25

Q.25 Select the most appropriate option to fill in blank no. 5.

- Ans 1. unsystematic
 2. formal
 3. regular
 4. irregular

Question ID : 65497831741
 Status : Answered
 Chosen Option : 3

Section : Part D Hindi

Q.1 'जिस पर आक्रमण हो' वाक्यांश के लिए एक शब्द होगा-

- Ans 1. आक्रांत
 2. आततायी
 3. आक्रामक
 4. आक्राता

Question ID : 65497831761

Status : Not Answered

Chosen Option : --

Q.2 दिए गए वाक्य में रेखांकित खंड को प्रतिस्थापित करने के लिए सबसे उपयुक्त विकल्प का चयन करें।
 यदि इसे प्रतिस्थापित करने की आवश्यकता नहीं है, तो विकल्प 'किसी बदलाव की आवश्यकता नहीं है'
 का चयन करें।

आप ठीक कहते हों।

- Ans 1. है
 2. हैं
 3. किसी बदलाव की आवश्यकता नहीं है।
 4. हो

Question ID : 65497831754

Status : Not Answered

Chosen Option : --

Q.3 दिये गये वाक्य के किस भाग में त्रुटि है?

झूट बोलना पाप है।

- Ans 1. है।
 2. बोलना
 3. पाप
 4. झूट

Question ID : 65497831757

Status : Not Answered

Chosen Option : --

Q.4 उस विकल्प का चयन कीजिए जो निम्न मुहावरे का अर्थ व्यक्त करता है।

घर की मुर्गी दाल बराबर

- Ans 1. लाभ के स्थान पर हानि
 2. अत्यधिक कजूस
 3. घर की वस्तु को महत्त्व देना
 4. घर की वस्तु को तुच्छ समझना

Question ID : 65497831752

Status : Not Answered

Chosen Option : --

Q.5 दिए गए वाक्य में रेखांकित खंड को प्रतिस्थापित करने के लिए सबसे उपयुक्त विकल्प का चयन करें।
यदि इसे प्रतिस्थापित करने की आवश्यकता नहीं है, तो विकल्प 'किसी बदलाव की आवश्यकता नहीं है'
का चयन करें।

सीता की मुखचंद्र देखकर राम भी खिल उठे।

- Ans 1. सीता का मुखचंद्र
 2. सीता के मुखचंद्र
 3. किसी बदलाव की आवश्यकता नहीं है
 4. सीता जीके मुखचंद्र

Question ID : 65497831743
 Status : Not Answered
 Chosen Option : --

Q.6 दिये गये वाक्यांश के लिए एक शब्द दीजिये।

जो प्राणी जमीन पर रहता हो

- Ans 1. नभचर
 2. थलचर
 3. जलचर
 4. जमीनी

Question ID : 65497831751
 Status : Not Answered
 Chosen Option : --

Q.7 सही वर्तनी वाले शब्द का चयन करें।

- Ans 1. मन्तव्य
 2. मतव्य
 3. मनत्व्य
 4. मनतव्य

Question ID : 65497831747
 Status : Not Answered
 Chosen Option : --

Q.8 दिये गये वाक्य के किस भाग में त्रुटि है?

पत्र किसके नाम पर लिखा गया है?

- Ans 1. पत्र किसके
 2. गया है?
 3. नाम पर
 4. लिखा

Question ID : 65497831759
 Status : Not Answered
 Chosen Option : --

Q.9 दिए गए वाक्य में रेखांकित खंड को प्रतिस्थापित करने के लिए सबसे उपयुक्त विकल्प का चयन करें।
यदि इसे प्रतिस्थापित करने की आवश्यकता नहीं है, तो विकल्प 'किसी बदलाव की आवश्यकता नहीं है'
का चयन करें।

आवश्यक कार्य में व्यस्त रहने के कारण मुझे अवकाश नहीं मिले।

- Ans
- 1. व्यस्त रहने के कारण मुझे अवकाश नहीं मिली।
 - 2. व्यस्त रहने के कारण मुझे अवकाश नहीं मिला।
 - 3. व्यस्त रहते के कारण मुझे अवकाश नहीं मिला।
 - 4. किसी बदलाव की आवश्यकता नहीं है।

Question ID : 65497831746
Status : Not Answered
Chosen Option : --

Q.10 'विफल' का विलोम शब्द होगा-

- Ans
- 1. निष्फल
 - 2. सफल
 - 3. प्रफुल्ल
 - 4. असफल

Question ID : 65497831760
Status : Not Answered
Chosen Option : --

Q.11 रिक्त स्थान की पूर्ति के लिए सबसे उपयुक्त शब्द का चयन कीजिए।

घोड़ा बीच में ही _____ गया।

- Ans
- 1. अड़
 - 2. टोक
 - 3. डट
 - 4. चल

Question ID : 65497831742
Status : Not Answered
Chosen Option : --

Q.12 सही वर्तनी वाले शब्द का चयन करें।

- Ans
- 1. नीर्निमेष
 - 2. निर्निमेष
 - 3. निनिमेष
 - 4. निनिर्मेष

Question ID : 65497831748
Status : Not Answered
Chosen Option : --

Q.13 रिक्त स्थान की पूर्ति के लिए सबसे उपयुक्त विकल्प का चयन करें।

पत्र का उत्तर शीघ्र देने की _____ करें।

- Ans
- 1. दया
 - 2. अनुकंपा
 - 3. करुणा
 - 4. कृपा

Question ID : 65497831756
Status : Not Answered
Chosen Option : --

Q.14 दिए गए शब्द का विलोम चुनें।

ऊपरलिखित

- Ans
- 1. स्वलिखित
 - 2. पूर्वलिखित
 - 3. परलिखित
 - 4. निम्नलिखित

Question ID : 65497831749
Status : Not Answered
Chosen Option : --

Q.15 रिक्त स्थान की पूर्ति के लिए सबसे उपयुक्त विकल्प का चयन करें।

जो _____ करता है उसका सर्वनाश हो जाता है।

- Ans
- 1. गर्व
 - 2. घमंड
 - 3. गौरव
 - 4. सम्मान

Question ID : 65497831755
Status : Not Answered
Chosen Option : --

Q.16 दिए गए शब्द के समानार्थी शब्द का चयन कीजिए।

पर्वत

- Ans
- 1. नग
 - 2. भूय
 - 3. इषु
 - 4. द्रुम

Question ID : 65497831745
Status : Not Answered
Chosen Option : --

Q.17 उस विकल्प का चयन कीजिए जो निम्न मुहावरे का अर्थ व्यक्त करता है।

लँगोटी में फाग खेलना

- Ans
- 1. काम खराब कर देना
 - 2. दुःख सहते जाना
 - 3. दरिद्रता में आनन्द लूटना
 - 4. लड़ने को तैयार होना

Question ID : 65497831750
Status : Not Answered
Chosen Option : --

Q.18 'सरोवर' का पर्यायवाची है-

- Ans
- 1. बादल
 - 2. समुद्र
 - 3. तालाब
 - 4. कमल

Question ID : 65497831758
Status : Not Answered
Chosen Option : --

Q.19 दिये गये वाक्यांश के लिए एक शब्द दीजिये।

जिसके - समान दूसरा न हो

- Ans
- 1. असीम
 - 2. अद्भुत
 - 3. अद्वितीय
 - 4. अनत

Question ID : 65497831753
Status : Not Answered
Chosen Option : --

Q.20 दिए गए वाक्य का वह भाग ज्ञात करें जिसमें कोई त्रुटि है। यदि कोई त्रुटि नहीं है, तो 'कोई त्रुटि नहीं' विकल्प को चुनें।

विद्यार्थियों ने प्रधानमंत्री को अभिनदन-पत्र अर्पित की।

- Ans
- 1. प्रधानमंत्री को
 - 2. विद्यार्थियों ने
 - 3. अभिनदन-पत्र अर्पित की।
 - 4. कोई त्रुटि नहीं

Question ID : 65497831744
Status : Not Answered
Chosen Option : --

Comprehension:

संस्कृति की रचना और अभिव्यक्ति कला के माध्यम से होती है और भारतीय कला का यह (1)_____ है कि वह यूरोप की कलात्मक भंगिमाओं से (2)_____ नहीं बिठा सकती। बहुत प्राचीन काल में, यूनानी कला का सम्मिश्रण भारतीय (3)_____ से हुआ था। परिणामस्वरूप गांधार - कला का (4)_____ हुआ। किंतु वह भारत में टिक नहीं सकी, क्योंकि वह अभारतीय थी, क्योंकि भारत की (5)_____ अपने को इस मिश्रित कला के भीतर से व्यक्त नहीं कर सकती थी।

निम्न प्रश्नों के उत्तर उपरोक्त गद्यांश के आधार पर दीजिए।

SubQuestion No : 21

Q.21 गद्यांश के रिक्त स्थान (1) के लिए सर्वाधिक उपयुक्त शब्द होगा-

- Ans 1. दोष
 2. स्वभाव
 3. विचार
 4. प्रभाव

Question ID : 65497831763

Status : Not Answered

Chosen Option : --

Comprehension:

संस्कृति की रचना और अभिव्यक्ति कला के माध्यम से होती है और भारतीय कला का यह (1)_____ है कि वह यूरोप की कलात्मक भंगिमाओं से (2)_____ नहीं बिठा सकती। बहुत प्राचीन काल में, यूनानी कला का सम्मिश्रण भारतीय (3)_____ से हुआ था। परिणामस्वरूप गांधार - कला का (4)_____ हुआ। किंतु वह भारत में टिक नहीं सकी, क्योंकि वह अभारतीय थी, क्योंकि भारत की (5)_____ अपने को इस मिश्रित कला के भीतर से व्यक्त नहीं कर सकती थी।

निम्न प्रश्नों के उत्तर उपरोक्त गद्यांश के आधार पर दीजिए।

SubQuestion No : 22

Q.22 गद्यांश के रिक्त स्थान (2) के लिए सर्वाधिक उपयुक्त शब्द होगा-

- Ans 1. सामंजस्य
 2. मेलजोल
 3. गठबंधन
 4. वैमनस्य

Question ID : 65497831764

Status : Not Answered

Chosen Option : --

Comprehension:

संस्कृति की रचना और अभिव्यक्ति कला के माध्यम से होती है और भारतीय कला का यह (1)_____ है कि वह यूरोप की कलात्मक भंगिमाओं से (2)_____ नहीं बिठा सकती। बहुत प्राचीन काल में, यूनानी कला का सम्मिश्रण भारतीय (3)_____ से हुआ था। परिणामस्वरूप गांधार - कला का (4)_____ हुआ। किंतु वह भारत में टिक नहीं सकी, क्योंकि वह अभारतीय थी, क्योंकि भारत की (5)_____ अपने को इस मिश्रित कला के भीतर से व्यक्त नहीं कर सकती थी।

निम्न प्रश्नों के उत्तर उपरोक्त गद्यांश के आधार पर दीजिए।

SubQuestion No : 23

Q.23 गद्यांश के रिक्त स्थान (3) के लिए सर्वाधिक उपयुक्त शब्द होगा-

- Ans 1. कला
 2. नृत्य
 3. संगीत
 4. कविता

Question ID : 65497831765

Status : Not Answered

Chosen Option : --

Comprehension:

संस्कृति की रचना और अभिव्यक्ति कला के माध्यम से होती है और भारतीय कला का यह (1)_____ है कि वह यूरोप की कलात्मक भंगिमाओं से (2)_____ नहीं बिठा सकती। बहुत प्राचीन काल में, यूनानी कला का सम्मिश्रण भारतीय (3)_____ से हुआ था। परिणामस्वरूप गांधार - कला का (4)_____ हुआ। किंतु वह भारत में टिक नहीं सकी, क्योंकि वह अभारतीय थी, क्योंकि भारत की (5)_____ अपने को इस मिश्रित कला के भीतर से व्यक्त नहीं कर सकती थी।

निम्न प्रश्नों के उत्तर उपरोक्त गद्यांश के आधार पर दीजिए।

SubQuestion No : 24

Q.24 गद्यांश के रिक्त स्थान (4) के लिए सर्वाधिक उपयुक्त शब्द होगा-

- Ans 1. जन्म
 2. अनुसंधान
 3. आविष्कार
 4. खोज

Question ID : 65497831766

Status : Not Answered

Chosen Option : --

Comprehension:

संस्कृति की रचना और अभिव्यक्ति कला के माध्यम से होती है और भारतीय कला का यह (1)_____ है कि वह यूरोप की कलात्मक भंगिमाओं से (2)_____ नहीं बिठा सकती। बहुत प्राचीन काल में, यूनानी कला का सम्मिश्रण भारतीय (3)_____ से हुआ था। परिणामस्वरूप गांधार - कला का (4)_____ हुआ। किंतु वह भारत में टिक नहीं सकी, क्योंकि वह अभारतीय थी, क्योंकि भारत की (5)_____ अपने को इस मिश्रित कला के भीतर से व्यक्त नहीं कर सकती थी।

निम्न प्रश्नों के उत्तर उपरोक्त गद्यांश के आधार पर दीजिए।

SubQuestion No : 25

Q.25 गद्यांश के रिक्त स्थान (5) के लिए सर्वाधिक उपयुक्त शब्द होगा-

- Ans 1. चिन्ता
 2. इच्छा
 3. परमात्मा
 4. आत्मा

Question ID : 65497831767

Status : Not Answered

Chosen Option : --

Exam Date	17/11/2021
Exam Time :	12:30 PM - 2:00 PM
Subject	Constable GD 2021

Section : Part A General Intelligence and Reasoning

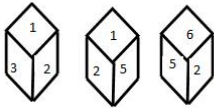
Q.1 Which two signs need to be interchanged to make the following equation correct?

$$16 \div 32 \times 128 + 9 - 17 = - 4$$

- Ans
- 1. \times and $-$
 - 2. $+$ and $+$
 - 3. \times and $+$
 - 4. $+$ and $-$

Question ID : 65497830258
 Status : Answered
 Chosen Option : 3

Q.2 Three different positions of the same dice are shown. Select the number that will be on the face opposite to the one having '4'.



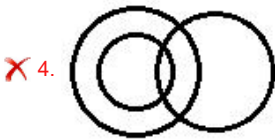
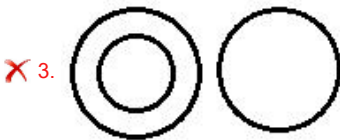
- Ans
- 1. 6
 - 2. 2
 - 3. 1
 - 4. 3

Question ID : 65497830259
 Status : Answered
 Chosen Option : 2

Q.3 Select the Venn diagram that best represents the relationship between the following classes.

Mammals, Zebra, Animals

Ans



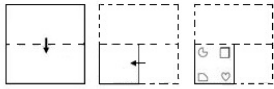
Question ID : 65497830264
 Status : Answered
 Chosen Option : 1

Q.4 In a certain code language, 'SINGER' is written as 'TKROUX'. How will 'ROOKIE' be written in that language?

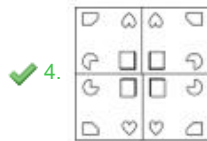
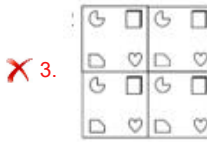
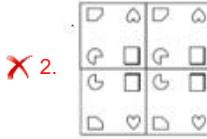
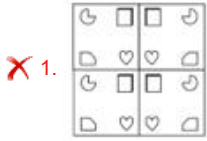
- Ans
- ✗ 1. SQSRYK
 - ✗ 2. SQRSYK
 - ✗ 3. SQRRYK
 - ✓ 4. SQSSYK

Question ID : 65497830249
 Status : Answered
 Chosen Option : 4

Q.5 The sequence of folding a piece of paper and the manner in which the folded paper has been cut is shown in the following figures. How would this paper look when unfolded?



Ans



Question ID : 65497830255
 Status : Answered
 Chosen Option : 4

Q.6 Study the given pattern carefully and select the number that can replace the question mark (?) in it.

81 33 56

3 6 4

54 11 ?

Ans 1. 9

2. 28

3. 27

4. 14

Question ID : 65497830253
 Status : Answered
 Chosen Option : 2

Q.7 C is the brother of B and D is the grandfather of E. B is the daughter-in-law of D and A is the father of E. How is C related to E?

Ans 1. Paternal Aunt

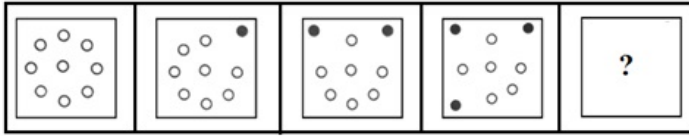
2. Maternal aunt

3. Maternal uncle

4. Paternal Uncle

Question ID : 65497830250
 Status : Answered
 Chosen Option : 3

Q.8 Which figure will replace the question mark (?) in the following figure series?



Ans

- 1.
- 2.
- 3.
- 4.

Question ID : 65497830247
 Status : Answered
 Chosen Option : 2

Q.9 Select the option that is related to the third number in the same way as the second number is related to the first number.

77 : 11 :: 259 : ?

- 1. 31
- 2. 43
- 3. 29
- 4. 37

Question ID : 65497830257
 Status : Answered
 Chosen Option : 4

Q.10 Select the letter-cluster from among the given options that can replace the question mark (?) in the following series.

BKR, DNV, FQZ, ?, JWH

- 1. HSC
- 2. THE
- 3. HUD
- 4. HTD

Question ID : 65497830261
 Status : Answered
 Chosen Option : 4

Q.11 A number is subtracted from 4 times of it and then, the number obtained is added to its (the resultant's) next number. If this gives the answer as 91, what was the original number?

- Ans
- 1. 17
 - 2. 13
 - 3. 14
 - 4. 15

Question ID : 65497830254

Status : Answered

Chosen Option : 4

Q.12 Select the number from among the given options that can replace the question mark (?) in the following series.

15, 45, 75, 105, ?

- Ans
- 1. 120
 - 2. 135
 - 3. 125
 - 4. 130

Question ID : 65497830246

Status : Answered

Chosen Option : 2

Q.13 In a certain code language, 'DESK' is coded as '@#+% ' and 'RAIN' is coded as '\$-x*'. How will 'RISK' be coded in that language?

- Ans
- 1. \$x+%
 - 2. +-%
 - 3. #+%@
 - 4. S#%x

Question ID : 65497830251

Status : Answered

Chosen Option : 1

Q.14 Twelve friends are sitting in two parallel lines. There are 6 people sitting in each row and facing a person of the other row. In row 1, A, B, C, D, E and F are seated and all of them are facing north. In row 2, O, P, Q, R, S and T are seated and all of them are facing south but not necessarily in the same order. C, is third to the right of B. C is not an immediate neighbour to either E or A. P is third to the left of S. Neither P nor S are sitting at the extreme ends of any row. F, faces O, who is second to the right of T, and T is not an immediate neighbour to S. Only two people are sitting between Q and T. A, is not facing R. Which of the following pairs are sitting at the extreme ends?

- Ans
- 1. SB, PC
 - 2. RB, TC
 - 3. RE, TC
 - 4. SA, PD

Question ID : 65497830256

Status : Answered

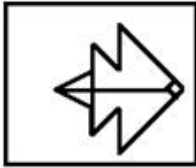
Chosen Option : 3

Q.15 Select the option in which the given figure is embedded (rotation is NOT allowed).



Ans

✗ 1.



✓ 2.



✗ 3.



✗ 4.



Question ID : 65497830260
 Status : Answered
 Chosen Option : 2

Q.16 In a certain code language, COACH is coded as 90, and POST is coded as 210. How will NOISE be coded in that language?

- Ans
- ✗ 1. 158
 - ✗ 2. 124
 - ✗ 3. 168
 - ✓ 4. 186

Question ID : 65497830266
 Status : Answered
 Chosen Option : 4

Q.17 Read the given statements and conclusions carefully. Assuming that the information given in the statements is true, even if it appears to be at variance with commonly known facts, decide which of the given conclusions logically follow(s) from the statements.

Statements:

All M. Tech students are engineers.

All LLM students are lawyers.

Conclusions:

I. All lawyers are LLM students.

II. All engineers are M. Tech students.

- Ans**
- 1. Both conclusions I and II follow.
 - 2. Only conclusion II follows.
 - 3. Only conclusion I follows.
 - 4. Neither conclusion I nor II follows.

Question ID : 65497830252

Status : Answered

Chosen Option : 4

Q.18 'Nephrologist' is related to 'Kidney' in the same way as 'Cardiologist' is related to _____.

- Ans**
- 1. Pancreas
 - 2. Lungs
 - 3. Heart
 - 4. Gall bladder

Question ID : 65497830262

Status : Answered

Chosen Option : 3

Q.19 Select the number from among the given options that can replace the question mark (?) in the following series.

14, 33, 71, 147, 299, ?

- Ans**
- 1. 612
 - 2. 493
 - 3. 593
 - 4. 603

Question ID : 65497830267

Status : Answered

Chosen Option : 4

Q.20 Neeta, Vinita, Satya, Kamini, Divya and Alpa are sitting around a circular table facing the centre of the table. Alpa is to the immediate right of Vinita. Kamini is between Neeta and Satya. Divya is between Neeta and Vinita. Who is sitting third to the left of Satya?

- Ans**
- 1. Divya
 - 2. Neeta
 - 3. Vinita
 - 4. Alpa

Question ID : 65497830263

Status : Answered

Chosen Option : 1

Q.21 Four letter-clusters have been given, out of which three are alike in some manner and one is different. Select the letter-cluster that is different.

- Ans
- 1. DGJMP
 - 2. TWZCF
 - 3. PSVYB
 - 4. NQTWA

Question ID : 65497830265
 Status : Answered
 Chosen Option : 4

Q.22 Select the option that is related to the third letter-cluster in the same way as the second letter-cluster is related to the first letter-cluster.

RKM : VFS :: PSQ : ?

- Ans
- 1. SNW
 - 2. TMW
 - 3. TNW
 - 4. SNX

Question ID : 65497830248
 Status : Answered
 Chosen Option : 3

Q.23 Select the combination of letters that when sequentially placed in the blanks of the given series will complete the series.

G _ _ P K _ D F _ K G D _ _ K

- Ans
- 1. DFGDFP
 - 2. DPDFKF
 - 3. DFGPFP
 - 4. DFGDFK

Question ID : 65497830245
 Status : Answered
 Chosen Option : 3

Q.24 Select the correct mirror image of the given combination when the mirror is placed to its right side.

FR4PW5

- Ans
- 1. ƆWƆP4RƆ
 - 2. ƆWƆP4RƆ
 - 3. ƆWƆP4RƆ
 - 4. 5WƆP4RƆ

Question ID : 65497830268
 Status : Answered
 Chosen Option : 1

Q.25 Select the correct option that indicates the arrangement of the given words in the order in which they appear in an English dictionary.

1. Uneventful
2. Uneconomical
3. Unexplained
4. Unexpected
5. Unemployment

- Ans
- 1. 2, 5, 3, 4, 1
 - 2. 2, 5, 1, 3, 4
 - 3. 2, 5, 1, 4, 3
 - 4. 3, 5, 1, 4, 2

Question ID : 65497830244
Status : Answered
Chosen Option : 3

Section : Part B General Knowledge and General Awareness

Q.1 Politician-writer M Veerappa Moily was awarded the Sahitya Akademi Award 2020 for his poetry titled 'Sri Bahubali Ahimsadigvijayam' in _____.

- Ans
- 1. Tamil
 - 2. Telugu
 - 3. Kannada
 - 4. Malayalam

Question ID : 65497830289
Status : Not Answered
Chosen Option : --

Q.2 Which of the following diseases is caused by the deficiency of haemoglobin?

- Ans
- 1. Malaria
 - 2. Anemia
 - 3. Rabies
 - 4. Cholera

Question ID : 65497830270
Status : Answered
Chosen Option : 2

Q.3 Which of the following taxes was introduced in India to achieve the goal of 'One Nation, One Tax, One Market'?

- Ans
- 1. Goods and Services Tax
 - 2. Union Excise Duty
 - 3. Custom Duty
 - 4. Security Transaction Tax

Question ID : 65497830293
Status : Answered
Chosen Option : 1

Q.4 Which of the following awards did Virat Kohli win in December 2020?

- Ans
- 1. ICC Men's Test Cricketer of the Decade
 - 2. ICC Men's T20 Cricketer of the Decade
 - 3. ICC Men's ODI Cricketer of the Decade
 - 4. ICC Spirit of Cricket Award of the Decade

Question ID : 65497830292
Status : Answered
Chosen Option : 3

Q.5 When did the Hindu Succession Act abandon the rule of primogeniture in India?

- Ans
- 1. 1956
 - 2. 1950
 - 3. 1946
 - 4. 1960

Question ID : 65497830280
Status : Answered
Chosen Option : 1

Q.6 Which of the following statements is INCORRECT?

- Ans
- 1. Food from the stomach passes into the small intestine.
 - 2. Complete digestion of carbohydrates, proteins and fats takes place in the small intestine.
 - 3. Saliva contains an enzyme called salivary lipase that breaks down starch into simple sugar.
 - 4. Food enters the stomach through the oesophagus (esophagus).

Question ID : 65497830282
Status : Answered
Chosen Option : 1

Q.7 Which of the following parts of the human body contains gustatory receptors?

- Ans
- 1. Eyes
 - 2. Nose
 - 3. Tongue
 - 4. Skin

Question ID : 65497830283
Status : Answered
Chosen Option : 2

Q.8 Farmers in some parts of India celebrate the Pola festival by worshipping their _____.

- Ans
- 1. farm tools
 - 2. ancestors
 - 3. farms
 - 4. bullocks

Question ID : 65497830281
Status : Not Answered
Chosen Option : --

Q.9 Who among the following laid the foundation of independent Awadh dynasty?

- Ans
- 1. Chin Qilich Khan
 - 2. Marthanda Varma
 - 3. Saadat Khan
 - 4. Haider Ali

Question ID : 65497830276
Status : Answered
Chosen Option : 4

Q.10 Which among the following is the longest river in the Thar Desert?

- Ans
- 1. Jhelum
 - 2. Chambal
 - 3. Son
 - 4. Luni

Question ID : 65497830288
Status : Answered
Chosen Option : 4

Q.11 The '_____' is an initiative of the National Bamboo Mission and the Government e-Marketplace (GeM) to showcase bamboo products.

- Ans
- 1. Indian Gold Collection
 - 2. Indian Bamboo Collection
 - 3. Green Wood Collection
 - 4. Green Gold Collection

Question ID : 65497830291
Status : Not Answered
Chosen Option : --

Q.12 The fifth storey of Qutub Minar was built during the reign of:

- Ans
- 1. Iltutmish
 - 2. Mohammad-bin-Tughlaq
 - 3. Firoz Shah Tughlaq
 - 4. Razia Sultana

Question ID : 65497830275
Status : Answered
Chosen Option : 1

Q.13 In which year was the Indian Industrial and Commercial Congress formed by Indian merchants and industrialists to organise their business interests?

- Ans
- 1. 1934
 - 2. 1909
 - 3. 1920
 - 4. 1945

Question ID : 65497830272
Status : Not Answered
Chosen Option : --

Q.14 Which of the following words in the Preamble to the Constitution describes India as a country having complete political freedom and being the supreme authority?

- Ans 1. Sovereign
 2. Democratic
 3. Socialist
 4. Secular

Question ID : 65497830285
Status : Answered
Chosen Option : 1

Q.15 Which of the following persons was NOT amongst the female judges sworn in as judges of the Supreme Court of India on 31st August 2021?

- Ans 1. Justice Indira Banerjee
 2. Justice BV Nagarathna
 3. Justice Bela M Trivedi
 4. Justice Hima Kohli

Question ID : 65497830286
Status : Answered
Chosen Option : 1

Q.16 Vikramshila Gangetic Dolphin Wildlife Sanctuary is located in which of the following states?

- Ans 1. Chhattisgarh
 2. Bihar
 3. Uttar Pradesh
 4. Goa

Question ID : 65497830271
Status : Answered
Chosen Option : 2

Q.17 _____ is a risk management strategy employed to offset losses in investments by taking an opposite position in a related asset.

- Ans 1. Scalability
 2. Hedging
 3. Amortization
 4. Collateral

Question ID : 65497830279
Status : Answered
Chosen Option : 2

Q.18 In which state was the Indo-Dutch centre of excellence (CoE) for vegetables and flowers opened in November 2020?

- Ans 1. Kerala
 2. Punjab
 3. Telangana
 4. Gujarat

Question ID : 65497830278
Status : Not Answered
Chosen Option : --

Q.19 The founder of Yes Bank is:

- Ans
- 1. Rajesh Kapoor
 - 2. Rahul Kumar
 - 3. Prashant Kumar
 - 4. Rana Kapoor

Question ID : 65497830274
Status : Answered
Chosen Option : 4

Q.20 Which of the following is a temple in Mangaluru, dedicated to an avatar of Lord Shiva?

- Ans
- 1. Mukteshvara Temple
 - 2. Ananta Vasudeva Temple
 - 3. Kadri Manjunatha Temple
 - 4. Gundicha Temple

Question ID : 65497830287
Status : Not Answered
Chosen Option : --

Q.21 'The Commonwealth of Cricket: A Lifelong Love Affair with the Most Subtle and Sophisticated Game Known to Humankind' is a book written by _____.

- Ans
- 1. Vinod Rai
 - 2. Vikram Limaye
 - 3. Diana Edulji
 - 4. Ramachandra Guha

Question ID : 65497830284
Status : Answered
Chosen Option : 4

Q.22 Sutirtha Mukherjee is an Indian _____.

- Ans
- 1. golfer
 - 2. table tennis player
 - 3. badminton player
 - 4. swimmer

Question ID : 65497830290
Status : Not Answered
Chosen Option : --

Q.23 The inaugural Olympic Congress was organised in the year 1894 in:

- Ans
- 1. Stockholm
 - 2. Oslo
 - 3. Paris
 - 4. London

Question ID : 65497830269
Status : Not Answered
Chosen Option : --

Q.24 Who among the following was elected as the speaker of the Bihar Assembly in November 2020?

- Ans
- 1. Prem Kumar
 - 2. V Jay Kumar Sinha
 - 3. Awadh Bihari Choudhary
 - 4. Jitan Ram Manjhi

Question ID : 65497830273
Status : Not Answered
Chosen Option : --

Q.25 Article 76 of the Constitution of India is associated with:

- Ans
- 1. Election Commission
 - 2. Supreme Court
 - 3. Attorney General of India
 - 4. Administrative Tribunals

Question ID : 65497830277
Status : Answered
Chosen Option : 3

Section : Part C Elementary Mathematics

Q.1 The difference between the compound interest and the simple interest on a certain sum at 8% per annum for 2 years is ₹144. What is the amount (in ₹)?

- Ans
- 1. 20,500
 - 2. 24,500
 - 3. 40,000
 - 4. 22,500

Question ID : 65497830295
Status : Answered
Chosen Option : 4

Q.2 The value of $75 \div 30 - \frac{3}{4}$ of $\left(\frac{5}{7} \div \frac{9}{14}\right) - \left(3\frac{1}{3} - 1\frac{2}{3}\right)$ is:

- Ans
- 1. 0
 - 2. 10
 - 3. 1
 - 4. 5

Question ID : 65497830298
Status : Answered
Chosen Option : 1

Q.3 After applying successive discounts of 10% and 5% on the marked price of an article, it was sold for ₹3,420. Find the marked price of the article.

- Ans**
- 1. ₹5,000
 - 2. ₹4,400
 - 3. ₹6,000
 - 4. ₹4,000

Question ID : 65497830301
Status : Answered
Chosen Option : 4

Q.4 12 spherical balls of radius 10 cm are dropped in a bucket which is full of water up to the brim. The water flowed out is collected in a cylindrical jar of radius 20 cm. What is the height (in cm) of the water in the jar? (Take $\pi = \frac{22}{7}$)

- Ans**
- 1. 45
 - 2. 32
 - 3. 40
 - 4. 18

Question ID : 65497830297
Status : Answered
Chosen Option : 3

Q.5 Raghu and Raman start together to walk a certain equal distance at a speed of 10 km/h and 8 km/h, respectively. Raghu arrives 30 minutes before Raman arrives. Find the distance between the start and the end point.

- Ans**
- 1. 25 km
 - 2. 28 km
 - 3. 24 km
 - 4. 20 km

Question ID : 65497830299
Status : Answered
Chosen Option : 4

Q.6 The sum of two numbers m and n is 84 ($m > n$) and their difference is 6. What is the ratio of the two numbers?

- Ans**
- 1. 4 : 3
 - 2. 17 : 15
 - 3. 9 : 8
 - 4. 15 : 13

Question ID : 65497830316
Status : Answered
Chosen Option : 4

Q.7 Soni and Gita together can complete a job in 8 h and Arti alone can complete the job in 12 h. In how many hours can Gita alone complete the job?

- Ans**
- 1. 48
 - 2. 12
 - 3. 24
 - 4. 14

Question ID : 65497830302
Status : **Marked For Review**
Chosen Option : 3

Q.8 The speed of a train is 110 km/h. It is increased by 20% and then runs at uniform speed. The train driver sees the 'Slow Down' sign, so he reduces the speed of the train by 40% of the speed at that moment. What is the final speed (in km/h, correct to one decimal place) of the train?

- Ans**
- 1. 69.2
 - 2. 75.5
 - 3. 66.5
 - 4. 79.2

Question ID : 65497830312
Status : **Answered**
Chosen Option : 4

Q.9 The average weight of 24 persons in a group is 72 kg. If 3 persons with average weight 78 kg leave the group and 4 persons of average weight 75 kg join the group, then what will be the average weight (in kg) of the persons in the group now?

- Ans**
- 1. 66.5
 - 2. 71.76
 - 3. 67.74
 - 4. 67.8

Question ID : 65497830306
Status : **Answered**
Chosen Option : 2

Q.10 Let x be a number between 1420 and 1780 such that when x is divided by 10, 15, 24 and 32, the remainder in each case is 7. The sum of the digits of x is:

- Ans**
- 1. 22
 - 2. 13
 - 3. 16
 - 4. 19

Question ID : 65497830305
Status : **Answered**
Chosen Option : 3

Q.11 The least number of square tiles required to pave the floor of a room with dimensions 15 metres and 12 metres will be:

- Ans**
- 1. 20
 - 2. 16
 - 3. 15
 - 4. 60

Question ID : 65497830303
Status : Answered
Chosen Option : 1

Q.12 A can do a certain piece of work in 20 days. B is 25% more efficient than A, and C is 20% more efficient than B. A and C work together for 5 days. B alone will complete the remaining work in:

- Ans**
- 1. 9 days
 - 2. 8 days
 - 3. 6 days
 - 4. 5 days

Question ID : 65497830313
Status : Answered
Chosen Option : 3

Q.13 By selling an article for ₹170, a man loses 15%. What per cent will he gain or lose, if he sells it for ₹206.40?

- Ans**
- 1. Loss, 1.6%
 - 2. Loss, 3.2%
 - 3. Gain, 3.2%
 - 4. Gain, 1.6%

Question ID : 65497830309
Status : Answered
Chosen Option : 3

Q.14 Seema is younger than Reema by 8 years. If 4 years back, their ages were in the ratio 1 : 2, then the age (in years) of Seema after 6 years from now will be:

- Ans**
- 1. 24
 - 2. 18
 - 3. 20
 - 4. 12

Question ID : 65497830296
Status : Answered
Chosen Option : 2

Q.15 A trader sells an item for ₹805 after offering a discount of 12.5% on its marked price. Had he not offered the discount, he would have earned a profit of 15%. What is the cost price (in ₹) of the item?

- Ans**
- 1. 780
 - 2. 700
 - 3. 800
 - 4. 750

Question ID : 65497830315
Status : Answered

Q.16 The speed of a boat in still water is 10 km/h. The time taken by the boat to go 35 km downstream is 1.25 times the time taken by it to go 14 km upstream. How much time (in hours) will it take to go 60 km downstream?

- Ans**
- 1. 3
 - 2. 3.5
 - 3. 4
 - 4. 4.5

Question ID : 65497830314
Status : Answered
Chosen Option : 4

Q.17 The marked price of an article is ₹450. It is sold for ₹267.30, after offering three successive discounts of 10%, x %, and 20%. What is the value of x ?

- Ans**
- 1. 16.5
 - 2. 17.5
 - 3. 18
 - 4. 19

Question ID : 65497830311
Status : Answered
Chosen Option : 2

Q.18 P sold a lamp to Q at a profit of 20%. Later, Q sold the same lamp to P at a profit of 30%, thereby making a profit of ₹108. How much (in ₹) did P pay originally for the lamp?

- Ans**
- 1. 300
 - 2. 330
 - 3. 320
 - 4. 280

Question ID : 65497830294
Status : Answered
Chosen Option : 1

Q.19 A number is decreased by 25% and then increased by 25%. The net percentage increase or decrease is:

- Ans**
- 1. 2.5% decrease
 - 2. $6\frac{1}{4}$ % decrease
 - 3. $3\frac{2}{3}$ % increase
 - 4. 4% decrease

Question ID : 65497830304
Status : Answered
Chosen Option : 2

Q.20 A certain sum amounts to ₹8,640 in 2 years at simple interest and to ₹9,720 in 3 years. The sum (in ₹) and the rate of interest p.a., respectively, are:

- Ans
- 1. ₹6,450 and 15%
 - 2. ₹6,450 and $16\frac{2}{3}\%$
 - 3. ₹6,480 and $16\frac{2}{3}\%$
 - 4. ₹6,480 and 15%

Question ID : 65497830308
Status : Answered
Chosen Option : 3

Q.21 The ratio of the incomes of A and B is 4 : 5 and the ratio of their expenditures is 2 : 3. If A and B save ₹7,200 and ₹6,000, respectively, then the income (in ₹) of A is:

- Ans
- 1. 19,200
 - 2. 20,000
 - 3. 24,000
 - 4. 18,000

Question ID : 65497830307
Status : Answered
Chosen Option : 1

Q.22 The average weight of 56 students in a group is 55 kg. If 12 students of average weight 60 kg leave and 6 students of average weight 52.5 kg join the group, then the average weight of the remaining students in the group decreases by:

- Ans
- 1. 2 kg
 - 2. 1.8 kg
 - 3. 1.5 kg
 - 4. 2.5 kg

Question ID : 65497830310
Status : Answered
Chosen Option : 3

Q.23 The value of $[6 + 3 \text{ of } 7 - 5] \div 2 \text{ of } 11$ is:

- Ans
- 1. 22
 - 2. 11
 - 3. 1
 - 4. 121

Question ID : 65497830300
Status : Answered
Chosen Option : 3

Q.24 Three solid metallic cubes of sides 6 cm, 8 cm and 10 cm, respectively, were melted to form a new solid cube.
Find the side (in cm) of the new solid cube.

- Ans
- 1. 9
 - 2. 12
 - 3. 8
 - 4. 12.5

Question ID : 65497830318
Status : Answered
Chosen Option : 2

Q.25 The difference between the compound interest and the simple interest on a certain sum at 5% per annum for 2 years is ₹152. What is the amount (in ₹)?

- Ans
- 1. 50,500
 - 2. 60,000
 - 3. 60,800
 - 4. 10,500

Question ID : 65497830317
Status : Answered
Chosen Option : 3

Section : Part D English

Q.1 Select the option that can be used as a one-word substitute for the given group of words.

An object through which we cannot see at all

- Ans
- 1. Opaque
 - 2. Translucent
 - 3. Transparent
 - 4. Crystal

Question ID : 65497830326
Status : Answered
Chosen Option : 1

Q.2 Select the most appropriate option to fill in the blank.

The socio-economic policy has been the _____ of much debate.

- Ans
- 1. subject
 - 2. talk
 - 3. object
 - 4. concept

Question ID : 65497830335
Status : Answered
Chosen Option : 1

Q.3 Select the option that can be used as a one-word substitute for the given group of words.

Imitate someone's action or words in order to entertain or ridicule

- Ans
- 1. Copy
 - 2. Mimic
 - 3. Repeat
 - 4. Duplicate

Question ID : 65497830332
Status : Answered
Chosen Option : 2

Q.4 Select the most appropriate meaning of the given idiom.

To beat around the bush

- Ans
- 1. To explain something in detail
 - 2. To avoid noticing someone
 - 3. To discuss the main topic
 - 4. To avoid the main issue

Question ID : 65497830329
Status : Answered
Chosen Option : 4

Q.5 Select the option that will improve the underlined part of the given sentence. In case no improvement is needed, select 'No improvement required'.

The movie theatre is a excited place where people can relax and enjoy the experience.

- Ans
- 1. exciting
 - 2. the excited
 - 3. No improvement required
 - 4. an exciting

Question ID : 65497830338
Status : Answered
Chosen Option : 4

Q.6 Select the INCORRECTLY spelt word.

- Ans
- 1. Omission
 - 2. Remission
 - 3. Recession
 - 4. Precission

Question ID : 65497830333
Status : Answered
Chosen Option : 4

Q.7 Select the most appropriate meaning of the given idiom.

Drop names

- Ans**
- 1. Delete someone's name from a list
 - 2. Show disrespect to someone's name
 - 3. Assume a false name
 - 4. Name famous people to impress others

Question ID : **65497830337**
Status : **Not Answered**
Chosen Option : --

Q.8 Select the **INCORRECTLY** spelt word.

- Ans**
- 1. Collection
 - 2. Complaint
 - 3. Coessponding
 - 4. Consolidation

Question ID : **65497830324**
Status : **Answered**
Chosen Option : **3**

Q.9 Select the most appropriate synonym of the given word.

Defy

- Ans**
- 1. Disobey
 - 2. Destroy
 - 3. Abide
 - 4. React

Question ID : **65497830331**
Status : **Answered**
Chosen Option : **1**

Q.10 Select the most appropriate synonym of the given word.

Stun

- Ans**
- 1. Shock
 - 2. Trick
 - 3. Joke
 - 4. Jest

Question ID : **65497830321**
Status : **Answered**
Chosen Option : **1**

Q.11 Select the option that can be used as a one-word substitute for the given group of words.

Release someone from a duty or obligation

- Ans
- 1. Banish
 - 2. Expel
 - 3. Dismiss
 - 4. Exonerate

Question ID : 65497830323
Status : Answered
Chosen Option : 2

Q.12 Select the option that will improve the underlined part of the sentence. In case no improvement is needed, select 'No improvement required'.

The decision to become a doctor is completely hers.

- Ans
- 1. No improvement required
 - 2. are completely her
 - 3. is complete her's
 - 4. is completely her

Question ID : 65497830325
Status : Answered
Chosen Option : 1

Q.13 The following sentence has been split into four segments. Identify the segment that contains a grammatical error.

The president forced / to leave the country / when the people rose up against / the government.

- Ans
- 1. when the people rose up against
 - 2. the government
 - 3. to leave the country
 - 4. The president forced

Question ID : 65497830330
Status : Answered
Chosen Option : 4

Q.14 The following sentence has been split into four segments. Identify the segment that contains a grammatical error.

The education of girls / is a primary concern for the country, / so it should be started early, / isn't it?

- Ans
- 1. The education of girls
 - 2. so it should be started early
 - 3. is a primary concern for the country
 - 4. isn't it

Question ID : 65497830319
Status : Answered
Chosen Option : 4

Q.15 Select the most appropriate ANTONYM of the given word.

Alert

- Ans
- 1. Aware
 - 2. Active
 - 3. Ready
 - 4. Careless

Question ID : 65497830322
Status : Answered
Chosen Option : 4

Q.16 Select the most appropriate option to fill in the blank.

Teams from all over India _____ in the talent show.

- Ans
- 1. participated
 - 2. proh bited
 - 3. produced
 - 4. provided

Question ID : 65497830328
Status : Answered
Chosen Option : 1

Q.17 The following sentence has been split into four segments. Identify the segment that contains a grammatical error.

The lady was furious / to see that no one / were wearing masks / on the road near the shop.

- Ans
- 1. The lady was furious
 - 2. on the road near the shop
 - 3. were wearing masks
 - 4. to see that no one

Question ID : 65497830320
Status : Answered
Chosen Option : 3

Q.18 Select the option that will improve the underlined part of the given sentence. In case no improvement is needed, select 'No improvement required'.

Unless we sat in an incorrect posture, we may strain our back.

- Ans
- 1. Until we sit
 - 2. If we sit
 - 3. Although we are sitting
 - 4. No improvement required

Question ID : 65497830327
Status : Answered
Chosen Option : 2

Q.19 Select the most appropriate **ANTONYM** of the given word.

Vulnerable

- Ans** 1. Secure
 2. Breakable
 3. Tender
 4. Sensitive

Question ID : 65497830336
Status : Answered
Chosen Option : 1

Q.20 Select the most appropriate option to fill in the blank.

For a member to borrow money from the association, three _____ need to be met.

- Ans** 1. points
 2. accounts
 3. restrictions
 4. conditions

Question ID : 65497830334
Status : Answered
Chosen Option : 4

Comprehension:

In the following passage, some words have been deleted. Read the passage carefully and select the most appropriate option to fill in each blank.

You should elect me as Class President as I think that everyone's (1)_____ matters. I am a confident speaker and have won prizes (2)_____ public speaking. I will make sure that the school council (3)_____ to us. When people come to me with problems, I (4)_____ listen carefully. I never judge people who come to me for (5)_____. You can count on me for help.

SubQuestion No : 21

Q.21 Select the most appropriate option to fill in blank no.1.

- Ans** 1. reaction
 2. estimate
 3. theorem
 4. opinion

Question ID : 65497830340
Status : Answered
Chosen Option : 4

Comprehension:

In the following passage, some words have been deleted. Read the passage carefully and select the most appropriate option to fill in each blank.

You should elect me as Class President as I think that everyone's (1)_____ matters. I am a confident speaker and have won prizes (2)_____ public speaking. I will make sure that the school council (3)_____ to us. When people come to me with problems, I (4) _____listen carefully. I never judge people who come to me for (5)_____. You can count on me for help.

SubQuestion No : 22

Q.22 Select the most appropriate option to fill in blank no.2.

- Ans 1. on
 2. for
 3. by
 4. of

Question ID : 65497830341
 Status : Answered
 Chosen Option : 2

Comprehension:

In the following passage, some words have been deleted. Read the passage carefully and select the most appropriate option to fill in each blank.

You should elect me as Class President as I think that everyone's (1)_____ matters. I am a confident speaker and have won prizes (2)_____ public speaking. I will make sure that the school council (3)_____ to us. When people come to me with problems, I (4) _____listen carefully. I never judge people who come to me for (5)_____. You can count on me for help.

SubQuestion No : 23

Q.23 Select the most appropriate option to fill in blank no.3.

- Ans 1. accepts
 2. hears
 3. believes
 4. listens

Question ID : 65497830342
 Status : Answered
 Chosen Option : 4

Comprehension:

In the following passage, some words have been deleted. Read the passage carefully and select the most appropriate option to fill in each blank.

You should elect me as Class President as I think that everyone's (1)_____ matters. I am a confident speaker and have won prizes (2)_____ public speaking. I will make sure that the school council (3)_____ to us. When people come to me with problems, I (4) _____listen carefully. I never judge people who come to me for (5)_____. You can count on me for help.

SubQuestion No : 24

Q.24 Select the most appropriate option to fill in blank no.4.

- Ans 1. barely
 2. always
 3. seldom
 4. never

Question ID : 65497830343
 Status : Answered
 Chosen Option : 2

Comprehension:

In the following passage, some words have been deleted. Read the passage carefully and select the most appropriate option to fill in each blank.

You should elect me as Class President as I think that everyone's (1)_____ matters. I am a confident speaker and have won prizes (2)_____ public speaking. I will make sure that the school council (3)_____ to us. When people come to me with problems, I (4) _____listen carefully. I never judge people who come to me for (5)_____. You can count on me for help.

SubQuestion No : 25

Q.25 Select the most appropriate option to fill in blank no.5.

- Ans 1. advice
 2. news
 3. lesson
 4. caution

Question ID : 65497830344
 Status : Answered
 Chosen Option : 1

Section : Part D Hindi

Q.1 दिये गये वाक्य के किस भाग में त्रुटि है?

इस ग्रथ की इतिहासिकता अत्यत सदिग्ध है।

- Ans 1. अत्यत
 2. इस ग्रथ
 3. सदिग्ध है।
 4. की इतिहासिकता

Question ID : 65497830358
 Status : Not Answered
 Chosen Option : --

Q.2 निम्नलिखित में से शुद्ध वर्तनी वाला शब्द कौन सा है?

- Ans 1. तिरस्कार
 2. तिरष्कार
 3. तीरस्कार
 4. तिरश्कार

Question ID : 65497830356
 Status : Not Answered
 Chosen Option : --

Q.3 दिए गए वाक्य में रेखांकित खंड को प्रतिस्थापित करने के लिए सबसे उपयुक्त विकल्प का चयन करें।
 यदि इसे प्रतिस्थापित करने की आवश्यकता नहीं है, तो विकल्प 'किसी बदलाव की आवश्यकता नहीं है' का चयन करें।

इसका उत्तरदायित्व मेरे ऊपर है।

- Ans 1. मुझ पर
 2. मुझ ऊपर
 3. मेरे पर
 4. किसी बदलाव की आवश्यकता नहीं है।

Question ID : 65497830352
 Status : Not Answered
 Chosen Option : --

Q.4 दिये गये वाक्यांश के लिए एक शब्द दीजिये।

मध्य रात्रि का समय

- Ans
- 1. प्रदोष
 - 2. उषाकाल
 - 3. निशीथ
 - 4. विभावरी

Question ID : 65497830354
Status : Not Answered
Chosen Option : --

Q.5 दिए गए शब्द के समानार्थी शब्द का चयन करें।

घृणा

- Ans
- 1. नफ़रत
 - 2. रिपु
 - 3. चाय
 - 4. करी

Question ID : 65497830346
Status : Not Answered
Chosen Option : --

Q.6 दिये गये वाक्य में रेखांकित अश को प्रतिस्थापित करने के लिए सबसे उपयुक्त विकल्प का चयन करें।

सैनिको ने देश को भारी सकट से रोक दिया।

- Ans
- 1. रोक लिया।
 - 2. भगा दिया
 - 3. बचा लिया।
 - 4. हटा दिया।

Question ID : 65497830361
Status : Not Answered
Chosen Option : --

Q.7 दिए गए वाक्य का वह भाग ज्ञात करें जिसमें कोई त्रुटि है। यदि कोई त्रुटि नहीं है, तो 'कोई त्रुटि नहीं है' विकल्प को चुनें।

मालिन ने माला गुँथ लिया।

- Ans
- 1. गुँथ लिया
 - 2. माला
 - 3. मालिन ने
 - 4. कोई त्रुटि नहीं

Question ID : 65497830345
Status : Not Answered
Chosen Option : --

Q.8 रिक्त स्थान की पूर्ति के लिए सबसे उपयुक्त विकल्प का चयन करें।

धमकी देते हुए बदमाश लोगो को _____ रहा था।

- Ans
- 1. ताक
 - 2. झाँक
 - 3. घूर
 - 4. देख

Question ID : 65497830364
Status : Not Answered
Chosen Option : --

Q.9 रिक्त स्थान की पूर्ति के लिए सबसे उपयुक्त शब्द का चयन करें।

कमल का पुष्प _____ होता है।

- Ans
- 1. निर्मल
 - 2. कोमल
 - 3. विमल
 - 4. सुकोमल

Question ID : 65497830350
Status : Not Answered
Chosen Option : --

Q.10 दिए गए वाक्य का वह भाग ज्ञात करें जिसमें कोई त्रुटि है। यदि कोई त्रुटि नहीं है, तो 'कोई त्रुटि नहीं है' चुनें।

नदियों के (1)/ बाढ़ ने (2)/ तबाही मचा दी है (3)/ कोई त्रुटि नहीं है (4)

- Ans
- 1. 2
 - 2. 3
 - 3. 4
 - 4. 1

Question ID : 65497830351
Status : Not Answered
Chosen Option : --

Q.11 निम्न चार विकल्पों में से, उस विकल्प का चयन करें जो दिए गये मुहावरे का अर्थ व्यक्त करता है-

चटनी हो जाना

- Ans
- 1. बर्बाद हो जाना
 - 2. कुचल जाना
 - 3. बहुत जल्द खर्च हो जाना
 - 4. पिस जाना

Question ID : 65497830348
Status : Not Answered
Chosen Option : --

Q.12 'गिरि' का पर्यायवाची है-

- Ans
- 1. आकाश
 - 2. धरती
 - 3. पर्वत
 - 4. बादल

Question ID : 65497830359
Status : Not Answered
Chosen Option : --

Q.13 दिये गये वाक्य में रेखांकित अश को प्रतिस्थापित करने के लिए सबसे उपयुक्त विकल्प का चयन करें।

भारत एक ताकतवर देश है।

- Ans
- 1. शक्तिशाली
 - 2. प्रभावशाली
 - 3. दुर्बल
 - 4. अविकसित

Question ID : 65497830360
Status : Not Answered
Chosen Option : --

Q.14 'जिसे त्याग देना उचित हो' वाक्यांश के लिए एक शब्द होगा-

- Ans
- 1. त्याज्य
 - 2. त्यागी
 - 3. वाछनीय
 - 4. त्यागपत्र

Question ID : 65497830363
Status : Not Answered
Chosen Option : --

Q.15 दिए गए शब्द का विलोम चुनें।

मधुर

- Ans
- 1. तिक्त
 - 2. लवण
 - 3. अम्ल
 - 4. कटु

Question ID : 65497830353
Status : Not Answered
Chosen Option : --

Q.16 दिए गये वाक्यांश के लिए एक शब्द दीजिये-

किसी के पीछे-पीछे चलने वाला

- Ans
- 1. अनुज
 - 2. सहचर
 - 3. अनुकरणीय
 - 4. अनुगामी

Question ID : 65497830349
Status : Not Answered
Chosen Option : --

Q.17 'पाँव उखड़ना' मुहावरे का सही अर्थ है-

- Ans 1. हारकर भाग जाना
 2. घायल होना
 3. गिर पड़ना
 4. आत्मसमर्पण करना

Question ID : 65497830362
 Status : Not Answered
 Chosen Option : --

Q.18 निम्नलिखित में से शुद्ध वर्तनी वाला शब्द कौन सा है?

- Ans 1. उज्जवल
 2. उज्वल
 3. उजवल
 4. उज्ज्वल

Question ID : 65497830357
 Status : Not Answered
 Chosen Option : --

Q.19 दिए गए शब्द के विलोम शब्द का चयन करें-

सहित

- Ans 1. असहित
 2. विमुख
 3. असीम
 4. विहीन

Question ID : 65497830347
 Status : Not Answered
 Chosen Option : --

Q.20 रिक्त स्थान की पूर्ति के लिए सबसे उपयुक्त शब्द का चयन करें।

आजकल वहाँ काफी सरगर्मी _____ है।

- Ans 1. दिखती
 2. वायवीय
 3. सभावित
 4. दृष्टिकोण

Question ID : 65497830355
 Status : Not Answered
 Chosen Option : --

Comprehension:

दिए गए गद्यांश में से कुछ शब्द हटा दिए गए हैं। विकल्पों की सहायता से प्रत्येक सख्खा के लिए सबसे उपयुक्त विकल्प का चयन करें।

सगीत का मानव- (1) _____ में विशेष स्थान है। प्रकृति का कण-कण सगीत से (2) _____ है। बाल-वृद्ध, नर-नारी सभी अनादि काल से उससे (3) _____ होते आये हैं और सदैव होते रहेंगे। शिशु की (4) _____ में, सरिता के (5) _____ निनाद में सगीत ही तो है।

SubQuestion No : 21

Q.21 गद्यांश के रिक्त स्थान (1) के लिए सर्वाधिक उपयुक्त शब्द होगा-

- Ans 1. मस्तिष्क
 2. जीवन
 3. हृदय
 4. ससार

Question ID : 65497830366

Status : Not Answered

Chosen Option : --

Comprehension:

दिए गए गद्यांश में से कुछ शब्द हटा दिए गए हैं। विकल्पों की सहायता से प्रत्येक सख्खा के लिए सबसे उपयुक्त विकल्प का चयन करें।

सगीत का मानव- (1) _____ में विशेष स्थान है। प्रकृति का कण-कण सगीत से (2) _____ है। बाल-वृद्ध, नर-नारी सभी अनादि काल से उससे (3) _____ होते आये हैं और सदैव होते रहेंगे। शिशु की (4) _____ में, सरिता के (5) _____ निनाद में सगीत ही तो है।

SubQuestion No : 22

Q.22 गद्यांश के रिक्त स्थान (2) के लिए सर्वाधिक उपयुक्त शब्द होगा-

- Ans 1. ओत-प्रोत
 2. सराबोर
 3. डूबा
 4. भीगा

Question ID : 65497830367

Status : Not Answered

Chosen Option : --

Comprehension:

दिए गए गद्यांश में से कुछ शब्द हटा दिए गए हैं। विकल्पों की सहायता से प्रत्येक सख्खा के लिए सबसे उपयुक्त विकल्प का चयन करें।

सगीत का मानव- (1) _____ में विशेष स्थान है। प्रकृति का कण-कण सगीत से (2) _____ है। बाल-वृद्ध, नर-नारी सभी अनादि काल से उससे (3) _____ होते आये हैं और सदैव होते रहेंगे। शिशु की (4) _____ में, सरिता के (5) _____ निनाद में सगीत ही तो है।

SubQuestion No : 23

Q.23 गद्यांश के रिक्त स्थान (3) के लिए सर्वाधिक उपयुक्त शब्द होगा-

- Ans 1. तृप्त
 2. गतिशील
 3. सचालित
 4. प्रभावित

Question ID : 65497830368

Status : Not Answered

Chosen Option : --

Comprehension:

दिए गए गद्यांश में से कुछ शब्द हटा दिए गए हैं। विकल्पों की सहायता से प्रत्येक सखा के लिए सबसे उपयुक्त विकल्प का चयन करें।

सगीत का मानव- (1) _____ में विशेष स्थान है। प्रकृति का कण-कण सगीत से (2) _____ है। बाल-वृद्ध, नर-नारी सभी अनादि काल से उससे (3) _____ होते आये हैं और सदैव होते रहेंगे। शिशु की (4) _____ में, सरिता के (5) _____ निनाद में सगीत ही तो है।

SubQuestion No : 24

Q.24 गद्यांश के रिक्त स्थान (4) के लिए सर्वाधिक उपयुक्त शब्द होगा-

- Ans**
- 1. हलचल
 - 2. नटखटपन
 - 3. कलरव
 - 4. मुस्कान

Question ID : 65497830369

Status : Not Answered

Chosen Option : --

Comprehension:

दिए गए गद्यांश में से कुछ शब्द हटा दिए गए हैं। विकल्पों की सहायता से प्रत्येक सखा के लिए सबसे उपयुक्त विकल्प का चयन करें।

सगीत का मानव- (1) _____ में विशेष स्थान है। प्रकृति का कण-कण सगीत से (2) _____ है। बाल-वृद्ध, नर-नारी सभी अनादि काल से उससे (3) _____ होते आये हैं और सदैव होते रहेंगे। शिशु की (4) _____ में, सरिता के (5) _____ निनाद में सगीत ही तो है।

SubQuestion No : 25

Q.25 गद्यांश के रिक्त स्थान (5) के लिए सर्वाधिक उपयुक्त शब्द होगा-

- Ans**
- 1. छुल-छुल
 - 2. छल-छल
 - 3. कल-कल
 - 4. झर-झर

Question ID : 65497830370

Status : Not Answered

Chosen Option : --

Exam Date	16/11/2021
Exam Time :	9:00 AM - 10:30 AM
Subject	Constable GD 2021

Section : Part A General Intelligence and Reasoning

Q.1 Five friends, P, Q, R, S and T are sitting in a row facing south. Q is sitting in the centre position. P is sitting at the west end. T and R are sitting on one side of Q. Two persons are sitting between P and R. Who is sitting between Q and P?

- Ans
- 1. Q
 - 2. T
 - 3. S
 - 4. R

Question ID : 65497828355
 Status : Answered
 Chosen Option : 3

Q.2 Select the option that is related to the third term in the same way as the second term is related to the first term.

Bhubaneswar : Odisha :: Aizawl : ?

- Ans
- 1. Mizoram
 - 2. Meghalaya
 - 3. Manipur
 - 4. Tripura

Question ID : 65497828354
 Status : Answered
 Chosen Option : 1

Q.3 Select the number from among the given options that can replace the question mark (?) in the following series.

19, 23, 32, 48, 73, ?

- Ans
- 1. 109
 - 2. 108
 - 3. 111
 - 4. 103

Question ID : 65497828351
 Status : Answered
 Chosen Option : 1

Q.4 Study the given pattern carefully and select the number that can replace the question mark (?) in it.

13 26 39
30 42 ?
17 16 15

- Ans 1. 40
 2. 45
 3. 54
 4. 60

Question ID : 65497828341

Status : **Not Attempted and Marked For Review**

Chosen Option : --

Q.5 In a certain code language, 'ARROW' is written as 'FOOSE' and 'GERM' is written as 'THOR'. How will 'MOWER' be written in that language?

- Ans 1. SHORE
 2. ROSHE
 3. RSEHO
 4. HORSE

Question ID : 65497828339

Status : **Answered**

Chosen Option : 3

Q.6 Select the combination of letters that when sequentially placed in the blanks of the given series will complete the series.

C 2 _ X 2 C C _ X X 2 _ C 2 _ X _ C

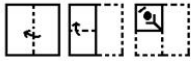
- Ans 1. C2X2X
 2. X2CX2
 3. AXX2C
 4. XCX2C

Question ID : 65497828350

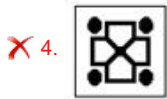
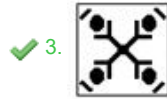
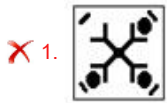
Status : **Answered**

Chosen Option : 2

Q.7 The sequence of folding a piece of paper and the manner in which the folded paper has been cut is shown in the following figures. How would this paper look when unfolded?



Ans



Question ID : 65497828343
 Status : Answered
 Chosen Option : 3

Q.8 Select the letter-cluster from among the given options that can replace the question mark (?) in the following series.

SKH, PMG, MOF, JQE, ?

Ans ✓ 1. GSD

✗ 2. SDF

✗ 3. GTD

✗ 4. HSD

Question ID : 65497828353
 Status : Answered
 Chosen Option : 1

Q.9 Four letter-clusters have been given, out of which three are alike in some manner and one is different. Select the letter-cluster that is different.

Ans ✗ 1. HIJ

✗ 2. QRS

✗ 3. DEF

✓ 4. NMP

Question ID : 65497828357
 Status : Answered
 Chosen Option : 4

Q.10 Eight friends, A, B, C, D, E, F, G and H, are sitting in a straight line, all facing the north. F is sitting between D and G. B is sitting between H and A. E is third to the left of G. G is sitting at one of the corners. H is third to the left of C. Who is sitting between A and E?

- Ans
- 1. B
 - 2. H
 - 3. D
 - 4. C

Question ID : 65497828344
 Status : Answered
 Chosen Option : 4

Q.11 Two different positions of the same dice marked with the letters/symbols X, S, Y, &, Z and @ are shown. Select the letter/symbol that will be on the face opposite to the face having the symbol S.



- Ans
- 1. &
 - 2. Z
 - 3. @
 - 4. X

Question ID : 65497828347
 Status : Answered
 Chosen Option : 1

Q.12 In a certain code language, 'India is my country' means '8573', 'Sam is my friend' means '8634', 'My country' means '73' and 'Team India' means '59'. What number is the code for 'Country'?

- Ans
- 1. 5
 - 2. 7
 - 3. 8
 - 4. 3

Question ID : 65497828358
 Status : Answered
 Chosen Option : 2

Q.13 'R+S' means 'R is the daughter of S'. 'R-S' means 'R is the husband of S'. 'R x S' means 'R is the brother of S'. If 'T x V + Z', then which of the following options is true?

- Ans
- 1. T is the uncle of Z.
 - 2. T is the father of Z.
 - 3. T is the son of Z.
 - 4. T is the brother of Z.

Question ID : 65497828363
 Status : Answered
 Chosen Option : 3

Q.14 Select the correct option that indicates the arrangement of the given words in the order in which they appear in an English dictionary.

1. Prestige
2. Pristine
3. Prescribe
4. Prepaid
5. Premium

- Ans
- 1. 4, 5, 3, 2, 1
 - 2. 5, 3, 4, 1, 2
 - 3. 5, 4, 3, 1, 2
 - 4. 4, 5, 3, 1, 2

Question ID : 65497828349
 Status : Answered
 Chosen Option : 3

Q.15 Select the option that is related to the third term in the same way as the second term is related to the first term.

BLOCK : LBPKC :: MARGIN : ?

- Ans
- 1. OHQHBL
 - 2. OHBHQL
 - 3. OBHQHL
 - 4. OHHQBL

Question ID : 65497828361
 Status : Answered
 Chosen Option : 4

Q.16 Select the option in which the given figure is embedded (rotation is NOT allowed).



- Ans
- 1.
 - 2.
 - 3.
 - 4.

Question ID : 65497828348
 Status : Answered
 Chosen Option : 1

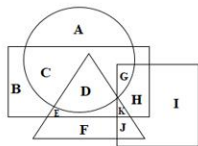
Q.17 Select the number from among the given options that can replace the question mark (?) in the following series.

24, 40, 64, 104, ?, 312

- Ans
- 1. 228
 - 2. 176
 - 3. 154
 - 4. 168

Question ID : 65497828359
 Status : Answered
 Chosen Option : 2

Q.18 In the following Venn diagram, the circle represents 'vegetables', the triangle represents 'roots', the square represents 'hard soil', and the rectangle represents 'summer'. Which of the following letters represents root vegetables that grow in summer but NOT in hard soil?



- Ans
- 1. D
 - 2. K
 - 3. E
 - 4. G

Question ID : 65497828356
 Status : Answered
 Chosen Option : 1

Q.19 Select the option that is related to the third number in the same way as the second number is related to the first number.

31 : 90 :: 43 : ?

- Ans
- 1. 130
 - 2. 125
 - 3. 102
 - 4. 75

Question ID : 65497828345
 Status : Not Attempted and Marked For Review
 Chosen Option : --

Q.20 Read the given statements and conclusions carefully. Assuming that the information given in the statements is true, even if it appears to be at variance with commonly known facts, decide which of the given conclusions logically follow(s) from the statements.

Statements:

All blues are whites.
Some whites are greys.

Conclusions:

I. All greys are whites.
II. All greys are blues.

- Ans** 1. Neither conclusion I nor conclusion II follows
 2. Only conclusion I follows
 3. Only conclusion II follows
 4. Both the conclusions follow

Question ID : 65497828340

Status : Answered

Chosen Option : 1

Q.21 When a number is added to its multiple of 5 and its square, the sum of these three numbers is 91. Find the number.

- Ans** 1. 9
 2. 11
 3. 7
 4. 6

Question ID : 65497828342

Status : Not Attempted and Marked For Review

Chosen Option : --

Q.22 In a certain code language, 'CIRCLE' is written as 'DLWAHY'. How will 'SQUARE' be written in that language?

- Ans** 1. TTPNKY
 2. TNZYVY
 3. TTZYNY
 4. TNPYVY

Question ID : 65497828362

Status : Answered

Chosen Option : 3

Q.23 In an imaginary mathematical system, symbol '-' stands for addition, symbol '+' stands for division, symbol 'x' stands for subtraction, and symbol '÷' stands for multiplication. All other rules of mathematics are the same as in the existing system. What is the value of the following expression?

$$240 \times 72 + 8 \div 24 - 6$$

- Ans** 1. 30
 2. 36
 3. 26
 4. 19

Question ID : 65497828346

Status : Answered

Chosen Option : 1

Q.24 Select the correct mirror image of the given combination when the mirror is placed at 'PQ' as shown.



- Ans
- 1. W8VGIJCVF
 - 2. JAQZGIA8M
 - 3. W8VIGJCVF
 - 4. JAQZGIA8M

Question ID : 65497828360
 Status : Answered
 Chosen Option : 4

Q.25 Select the figure from among the given options that can replace the question mark (?) in the following series.



- Ans
- 1.
 - 2.
 - 3.
 - 4.

KD Job Updates

Question ID : 65497828352
 Status : Answered
 Chosen Option : 3

Q.1 Which of the following Articles of the Constitution of India is related to the promotion of co-operative societies?

- Ans 1. 43A
 2. 43B
 3. 31A
 4. 31B

Question ID : 65497828376
 Status : Answered
 Chosen Option : 2

Q.2 Which of the following nations was India's top trading partner in the financial year 2019-20?

- Ans 1. China
 2. The US
 3. Mauritius
 4. Japan

Question ID : 65497828365
 Status : Not Answered
 Chosen Option : --

Q.3 After the death of Guru Gobind Singh in 1708, the Khalsa revolted against the Mughal authority under the leadership of _____.

- Ans 1. Guru Angad
 2. Guru Amar Das
 3. Banda Bahadur
 4. Guru Nanak Dev

Question ID : 65497828385
 Status : Not Attempted and Marked For Review
 Chosen Option : --

Q.4 Who among the following founded the newspaper 'Sambad Kaumudi'?

- Ans 1. Rash Bihari Bose
 2. Raja Ram Mohan Roy
 3. Shishir Kumar Ghosh
 4. Ishwar Chandra Vidyasagar

Question ID : 65497828366
 Status : Not Answered
 Chosen Option : --

Q.5 Which of the following set of countries participated in the Malabar Naval Exercise 2020?

- Ans 1. India, Japan and the US
 2. India, Israel and the US
 3. India, Australia, Israel and the US
 4. India, Australia, Japan and the US

Question ID : 65497828375
 Status : Not Answered
 Chosen Option : --

Q.6 Sarayu river is a tributary of which river?

- Ans
- 1. Pindar
 - 2. Bhagirathi
 - 3. Tons
 - 4. Sharda

Question ID : 65497828364
Status : Not Answered
Chosen Option : --

Q.7 On 26 January 2019, the Constitution of India completed 69 years of its existence. In these years, it was amended _____ times (as on 12 January 2019).

- Ans
- 1. 100
 - 2. 103
 - 3. 109
 - 4. 106

Question ID : 65497828386
Status : Answered
Chosen Option : 2

Q.8 Which year marks the beginning of phase 2 of the Swachh Bharat Mission (Grameen)?

- Ans
- 1. 2020-21
 - 2. 2019-20
 - 3. 2018-19
 - 4. 2021-22

Question ID : 65497828388
Status : Answered
Chosen Option : 2

Q.9 Who among the following represents India in archery?

- Ans
- 1. Deepika Kumari
 - 2. Soumyajit Ghosh
 - 3. Neeraj Chopra
 - 4. Manika Batra

Question ID : 65497828367
Status : Answered
Chosen Option : 1

Q.10 _____ represents the high point of an eclectic art, which, in the 7th and 8th centuries under the Chalukya dynasty, achieved a harmonious blend of architectural forms from northern and southern India.

- Ans
- 1. Kochi
 - 2. Pattadakal
 - 3. Konark
 - 4. Bhubaneswar

Question ID : 65497828368
Status : Not Answered
Chosen Option : --

Q.11 _____ is known as viticulture.

- Ans
- 1. growing vegetables, flowers and fruits
 - 2. cultivation of grapes
 - 3. breeding of fish
 - 4. rearing of silkworms

Question ID : 65497828382
Status : Not Answered
Chosen Option : --

Q.12 Who among the following is best known for his plays 'Yayati' and 'Tughlaq'?

- Ans
- 1. Viju Khote
 - 2. Shreeram Lagoo
 - 3. Girish Karnad
 - 4. Mohammed Zahur Khayyam

Question ID : 65497828371
Status : Not Answered
Chosen Option : --

Q.13 Faqir Chand Kohli, who passed away in November 2020, was known as the '_____'.
Ans

- 1. Father of Indian Civil Services
- 2. Father of Indian Space Programme
- 3. Father of Indian Prehistory
- 4. Father of Indian Software (IT) Industry

Question ID : 65497828380
Status : Not Answered
Chosen Option : --

Q.14 In a molecule of water, the ratio of the mass of hydrogen to that of oxygen is:

- Ans
- 1. 1 : 8
 - 2. 1 : 4
 - 3. 1 : 2
 - 4. 1 : 16

Question ID : 65497828370
Status : Marked For Review
Chosen Option : 4

Q.15 Union Minister of Education launched a free mobile app called _____, on 5 September 2020.

- Ans
- 1. EnglishPro
 - 2. Beelinguapp
 - 3. Duolingo
 - 4. Hello Talk

Question ID : 65497828387
Status : Not Answered
Chosen Option : --

Q.16 α particles are doubly charged ions of _____.

- Ans
- 1. lithium
 - 2. beryllium
 - 3. helium
 - 4. hydrogen

Question ID : 65497828369
Status : Not Answered
Chosen Option : --

Q.17 Which of the following institutions started the 'Team Halo' initiative in November 2020?

- Ans
- 1. World Bank
 - 2. United Nations
 - 3. World Health Organization
 - 4. World Trade Organization

Question ID : 65497828377
Status : Not Answered
Chosen Option : --

Q.18 With which of the following sports would you associate the team 'Kerala Blasters'?

- Ans
- 1. Football
 - 2. Badminton
 - 3. Kabaddi
 - 4. Cricket

Question ID : 65497828383
Status : Marked For Review
Chosen Option : 3

Q.19 Which of the following is the traditional bamboo dance of the Mizos?

- Ans
- 1. Moyashai
 - 2. Udoho
 - 3. Cheraw
 - 4. Aaluyattu

Question ID : 65497828378
Status : Not Answered
Chosen Option : --

Q.20 The Third Battle of Panipat between the Marathas and Ahmad Shah Durrani , the ruler of Afghanistan was fought in the year:

- Ans
- 1. 1781
 - 2. 1851
 - 3. 1761
 - 4. 1831

Question ID : 65497828374
Status : Not Answered
Chosen Option : --

Q.21 In November 2020, the Board of Control for Cricket in India (BCCI) announced _____ as Team India's kit sponsor till 2023.

- Ans
- 1. Byju's
 - 2. Nike
 - 3. MPL Sports
 - 4. Oppo

Question ID : 65497828381
 Status : Answered
 Chosen Option : 3

Q.22 Raja Todar Mal was the Revenue Minister during the reign of which of the following Mughal emperors?

- Ans
- 1. Humayun
 - 2. Shah Jahan
 - 3. Jahangir
 - 4. Akbar

Question ID : 65497828384
 Status : Answered
 Chosen Option : 4

Q.23 As per calculations done in 2011-2012, the poverty line for a person of rural India got fixed at _____ per month.

- Ans
- 1. ₹816
 - 2. ₹752
 - 3. ₹1,000
 - 4. ₹687

Question ID : 65497828372
 Status : Not Answered
 Chosen Option : --

Q.24 Five rivers from Punjab (India) enter the river _____ at Mithankot in Pakistan.

- Ans
- 1. Indus
 - 2. Yamuna
 - 3. Ganga
 - 4. Brahmaputra

Question ID : 65497828379
 Status : Answered
 Chosen Option : 1

Q.25 _____ is a simple device that is used to either break the electric circuit, or to complete it.

- Ans
- 1. Transistor
 - 2. Switch
 - 3. Capacitor
 - 4. Resistor

Question ID : 65497828373
 Status : Answered
 Chosen Option : 2

Q.1 The perimeter of an equilateral triangle is $36\sqrt{3}$ cm. Find its height.

- Ans
- 1. 18 cm
 - 2. 9 cm
 - 3. 10 cm
 - 4. 6 cm

Question ID : 65497828400
Status : Answered
Chosen Option : 1

Q.2 A person crosses a 1600 m long street in 4 min. What is his speed (in km/h)?

- Ans
- 1. 22
 - 2. 14
 - 3. 20
 - 4. 24

Question ID : 65497828398
Status : Answered
Chosen Option : 4

Q.3 A chair is sold for ₹720 after giving a discount of 10% on its marked price. The cost price of the chair is ₹640. If it is sold at the marked price, then the profit percentage will be:

- Ans
- 1. 30%
 - 2. 20%
 - 3. 18%
 - 4. 25%

Question ID : 65497828407
Status : Answered
Chosen Option : 4

Q.4 What is 12% of 4% of 7% of 2×10^6 ?

- Ans
- 1. 386
 - 2. 583
 - 3. 672
 - 4. 121

Question ID : 65497828403
Status : Answered
Chosen Option : 3

Q.5 A solid metallic rectangular block of dimensions $112 \text{ cm} \times 44 \text{ cm} \times 25 \text{ cm}$ is melted and recast into a cylinder of radius 35 cm. The curved surface area (in cm^2) of the cylinder is: (Take $\pi = \frac{22}{7}$)

- Ans
- 1. 7260
 - 2. 6600
 - 3. 7040
 - 4. 6160

Question ID : 65497828413

Status : **Not Attempted and Marked For Review**

Chosen Option : --

Q.6 Find the value of $45 - 3 \times (4 \text{ of } 6 + 12 \div 3 \times 6 - 4 \times 5) + 6$.

- Ans
- 1. -45
 - 2. -135
 - 3. -33
 - 4. -30

Question ID : 65497828408

Status : **Answered**

Chosen Option : 3

Q.7 By selling 36 m of jute, a shopkeeper gains an amount equal to the selling price of 12 m of jute. Find the gain percentage.

- Ans
- 1. 50%
 - 2. 40%
 - 3. 45%
 - 4. 55%

Question ID : 65497828409

Status : **Answered**

Chosen Option : 1

Q.8 Divide ₹2,760 in to two parts such that when these are invested for 2 and 4 years, respectively, at the rate of 5 % per annum simple interest, the amounts received are equal. What is the second part (in ₹) invested?

- Ans
- 1. 1,100
 - 2. 1,500
 - 3. 1,320
 - 4. 1,440

Question ID : 65497828396

Status : **Not Attempted and Marked For Review**

Chosen Option : --

Q.9 A 725 m long train passes a tunnel 235 m long in 48 seconds. Find the speed of the train.

- Ans**
- 1. 42 km/h
 - 2. 72 km/h
 - 3. 36 km/h
 - 4. 100 km/h

Question ID : 65497828405
 Status : Answered
 Chosen Option : 2

Q.10 A batsman scored 124 runs, which included 6 boundaries and 10 sixes. What percentage of his total score did he make by running between the wickets?

- Ans**
- 1. $28\frac{19}{31}\%$
 - 2. $24\frac{1}{31}\%$
 - 3. $32\frac{8}{31}\%$
 - 4. $35\frac{3}{31}\%$

Question ID : 65497828390
 Status : Answered
 Chosen Option : 3

Q.11 The salaries of Ravi and Sumit are in the ratio 4 : 5. If the salary of each is increased by ₹6,000 the new ratio becomes 35 : 40. What will be Sumit's increased salary?

- Ans**
- 1. ₹26,000
 - 2. ₹36,000
 - 3. ₹16,000
 - 4. ₹1,60,000

Question ID : 65497828399
 Status : Answered
 Chosen Option : 3

Q.12 Anu is four times as good as Binni in completing a task. Together they finish the same task in 7 hours. In how many hours will Anu alone complete the task?

- Ans**
- 1. 22
 - 2. $35/4$
 - 3. $31/4$
 - 4. 24

Question ID : 65497828404
 Status : Answered
 Chosen Option : 2

Q.13 The number of students in class IX and class X is 42 and 45, respectively. The ratio of the number of boys to girls in classes IX and X is 9 : 5 and 8 : 7, respectively. What is the difference between the total number of boys and the total number of girls in both the classes taken together?

- Ans**
- 1. 11
 - 2. 12
 - 3. 17
 - 4. 15

Question ID : **65497828411**
 Status : **Answered**
 Chosen Option : **4**

Q.14 P, Q and R can complete a work in 10 days, 20 days and 30 days, respectively, working alone. How soon can the work be completed if P is assisted by Q and R on alternate days?

- Ans**
- 1. $7\frac{1}{17}$ days
 - 2. 9 days
 - 3. 5 days
 - 4. $6\frac{1}{2}$ days

Question ID : **65497828410**
 Status : **Not Answered**
 Chosen Option : --

Q.15 A loss of $10\frac{1}{2}\%$ gets converted into a profit of $11\frac{3}{5}\%$ when the selling price is increased by ₹132.60. The cost price (in ₹) of the article is:

- Ans**
- 1. 750
 - 2. 800
 - 3. 600
 - 4. 500

Question ID : **65497828391**
 Status : **Answered**
 Chosen Option : **3**

Q.16 The greatest number that will divide 398, 437 and 5425 leaving 7, 12 and 2 as remainders, respectively, is:

- Ans**
- 1. 11
 - 2. 15
 - 3. 17
 - 4. 19

Question ID : **65497828393**
 Status : **Answered**
 Chosen Option : **3**

Q.17 If the average of two numbers is 13 and the square root of their product is 12, then the difference between the numbers is:

- Ans**
- 1. 10
 - 2. 18
 - 3. 8
 - 4. 12

Question ID : **65497828394**
 Status : **Answered**
 Chosen Option : **1**

Q.18 The average of 10 observations is 46. It was realised later that an observation was misread as 42 in place of 142. The correct average is:

- Ans**
- 1. 52
 - 2. 46
 - 3. 58
 - 4. 56

Question ID : **65497828401**
 Status : **Answered**
 Chosen Option : **4**

Q.19 The ratio of A's and B's salary is 6 : 7. If B's salary is increased by $5\frac{1}{2}\%$, then his total salary becomes ₹1,47,700. The salary (in ₹) of A is:

- Ans**
- 1. 1,10,000
 - 2. 1,20,000
 - 3. 1,40,000
 - 4. 1,35,000

Question ID : **65497828395**
 Status : **Answered**
 Chosen Option : **2**

Q.20 The certain sum amounts to ₹9,982.50 in $2\frac{1}{2}$ years at 12% p.a., interest compounded 10-monthly. The sum (in ₹) is:

- Ans**
- 1. 8,500
 - 2. 7,800
 - 3. 8,000
 - 4. 7,500

Question ID : **65497828412**
 Status : **Not Attempted and Marked For Review**
 Chosen Option : **--**

Q.21 A nine-digit number $89563x87y$ is divisible by 72. What is the value of $\sqrt{7x - 3y}$?

- Ans
- 1. 8
 - 2. 5
 - 3. 6
 - 4. 4

Question ID : 65497828389
Status : Answered
Chosen Option : 3

Q.22 The value of $3 \times 7 + 5 - 6 \div 3 - 9 + 45 \div 5 \times 4 - 45$ is:

- Ans
- 1. 9
 - 2. 6
 - 3. 7
 - 4. 36

Question ID : 65497828397
Status : Answered
Chosen Option : 2

Q.23 A TV was available for ₹14,500. The price came down to ₹11,890 during the Diwali sale. What is the percentage discount?

- Ans
- 1. 19.56%
 - 2. 19%
 - 3. 18%
 - 4. 17.6%

Question ID : 65497828402
Status : Answered
Chosen Option : 3

Q.24 A shopkeeper sold an article at a gain of 20%. Had he bought it for 20% less than the original cost and sold it for ₹10 less, he would have gained 25%. Then the Cost Price of the article is:

- Ans
- 1. ₹50
 - 2. ₹40
 - 3. ₹60
 - 4. ₹45

Question ID : 65497828406
Status : Answered
Chosen Option : 1

Q.25 A certain sum amounts to ₹13200 after 4 years and to ₹16400 after 8 years at the same rate per cent p.a. at simple interest. The simple interest (in ₹) on the same sum at 10% p.a. for $3\frac{1}{5}$ years will be:

- Ans
- 1. 4000
 - 2. 3200
 - 3. 2500
 - 4. 3500

Question ID : 65497828392
Status : Answered
Chosen Option : 2

Section : Part D English

Q.1 Select the most appropriate synonym of the given word.

Visible

- Ans
- 1. Secret
 - 2. Apparent
 - 3. Vague
 - 4. Hidden

Question ID : 65497828415
Status : Marked For Review
Chosen Option : 2

Q.2 Select the most appropriate option that can substitute the underlined word in the given sentence.

Microwave ovens heat food quickly, anxiously and safely, but do not brown or bake food in the way that conventional ovens do.

- Ans
- 1. angrily
 - 2. efficiently
 - 3. beautifully
 - 4. accidentally

Question ID : 65497828416
Status : Answered
Chosen Option : 2

Q.3 Select the most appropriate option to fill in the blank.

A _____ mind rarely meets a dead end; it continues the search for the answers.

- Ans
- 1. peculiar
 - 2. weird
 - 3. curious
 - 4. strange

Question ID : 65497828419
Status : Answered
Chosen Option : 3

Q.4 The following sentence has been divided into parts. One of them may contain an error. Select the part that contains the error from the given options. If you don't find any error, mark 'No error' as your answer.

She left / hers umbrella / at the office.

- Ans 1. No error
 2. hers umbrella
 3. She left
 4. at the office

Question ID : 65497828414
 Status : Answered
 Chosen Option : 2

Q.5 Select the option that can be used as a one-word substitute for the given group of words.

A person who knows everything

- Ans 1. Naive
 2. Omniscient
 3. Intelligent
 4. Omnipresent

Question ID : 65497828420
 Status : Answered
 Chosen Option : 3

Q.6 The following sentence has been split into four segments. Identify the segment that contains a grammatical error.

Mohan told to / Sagar that he / was looking / very pale.

- Ans 1. very pale
 2. Sagar that he
 3. Mohan told to
 4. was looking

Question ID : 65497828422
 Status : Answered
 Chosen Option : 3

Q.7 Select the most appropriate option that can substitute the underlined segment in the given sentence. If there is no need to substitute it, select 'No substitution required'.

I'm sure he will grab the chance to earn some extra money.

- Ans 1. No substitution required
 2. of earns
 3. to earned
 4. to earns

Question ID : 65497828429
 Status : Answered
 Chosen Option : 1

Q.8 Select the option that can be used as a one-word substitute for the given group of words.

One who examines a company's financial records

- Ans
- 1. Conductor
 - 2. Author
 - 3. Auditor
 - 4. Instructor

Question ID : 65497828424
Status : Answered
Chosen Option : 3

Q.9 Select the most appropriate option to fill in the blank.

The doctor _____ her to stop eating fried food.

- Ans
- 1. advised
 - 2. considered
 - 3. arranged
 - 4. expressed

Question ID : 65497828421
Status : Answered
Chosen Option : 1

Q.10 Select the most appropriate option that can substitute the underlined segment in the given sentence. If there is no need to substitute it, select 'No substitution required'.

You need to get the cholesterol from out of your system.

- Ans
- 1. out of your system
 - 2. No substitution required
 - 3. out your system
 - 4. from out off your system

Question ID : 65497828430
Status : Answered
Chosen Option : 1

Q.11 Select the most appropriate option to fill in the blank.

A dialogue is a _____ between two or more people.

- Ans
- 1. conversation
 - 2. commission
 - 3. convertible
 - 4. conversion

Question ID : 65497828427
Status : Answered
Chosen Option : 1

Q.12 Select the most appropriate meaning of the given idiom.

Play for time

- Ans
- 1. To do something in the stipulated time
 - 2. To make excuses or do things to gain time
 - 3. To play something for the sake of old times
 - 4. To play music in the time provided

Question ID : 65497828428

Status : Not Attempted and
Marked For Review

Chosen Option : --

Q.13 Select the INCORRECTLY spelt word.

- Ans
- 1. Aniversary
 - 2. Felicitate
 - 3. Congratulations
 - 4. Response

Question ID : 65497828418

Status : Answered

Chosen Option : 1

Q.14 Select the most appropriate meaning of the given idiom.

To breathe one's last

- Ans
- 1. To take a major decision
 - 2. To give final verdict
 - 3. To make a plot
 - 4. To die

Question ID : 65497828417

Status : Answered

Chosen Option : 4

Q.15 Select the INCORRECTLY spelt word.

- Ans
- 1. Delivery
 - 2. Stationary
 - 3. Dictionary
 - 4. Voluntary

Question ID : 65497828425

Status : Answered

Chosen Option : 3

Q.16 The following sentence has been split into four segments. Identify the segment that contains a grammatical error.

Neither the manager / nor the employees was / aware of the / shortage of raw materials.

- Ans
- 1. Neither the manager
 - 2. shortage of raw materials
 - 3. nor the employees was
 - 4. aware of the

Question ID : 65497828431
Status : Answered
Chosen Option : 3

Q.17 Select the option that can be used as a one-word substitute for the given group of words.

Anything that leads to death

- Ans
- 1. Scary
 - 2. Serious
 - 3. Fatal
 - 4. Ominous

Question ID : 65497828433
Status : Answered
Chosen Option : 3

Q.18 Select the most appropriate ANTONYM of the given word.

Vital

- Ans
- 1. Critical
 - 2. Trivial
 - 3. Manual
 - 4. Crucial

Question ID : 65497828423
Status : Answered
Chosen Option : 2

Q.19 Select the most appropriate ANTONYM of the given word.

Precarious

- Ans
- 1. Safe
 - 2. Dangerous
 - 3. Uncertain
 - 4. Perilous

Question ID : 65497828426
Status : Not Answered
Chosen Option : --

Q.20 Select the most appropriate **SYNONYM** of the given word.

Threat

- Ans** 1. Suggestion
 2. Proof
 3. Attention
 4. Risk

Question ID : 65497828432

Status : Answered

Chosen Option : 4

Comprehension:

In the following passage, some words have been deleted. Read the passage carefully and select the most appropriate option to fill in each blank.

When the air is clear, the sunset (1)_____ yellow, because the light from the sun has passed a long distance through air and the blue light (2)_____ scattered away. If the air is polluted with small particles, natural (3)_____ otherwise, the sunset will be more red. Sunsets over the sea may also be orange, (4)_____ salt particles in the air. The sky (5)_____ the sun is seen reddened, as well as the light coming directly from the sun.

SubQuestion No : 21

Q.21 Select the most appropriate option to fill in blank no. 1.

- Ans** 1. is
 2. appears
 3. has appeared
 4. appeared

Question ID : 65497828435

Status : Answered

Chosen Option : 2

Comprehension:

In the following passage, some words have been deleted. Read the passage carefully and select the most appropriate option to fill in each blank.

When the air is clear, the sunset (1)_____ yellow, because the light from the sun has passed a long distance through air and the blue light (2)_____ scattered away. If the air is polluted with small particles, natural (3)_____ otherwise, the sunset will be more red. Sunsets over the sea may also be orange, (4)_____ salt particles in the air. The sky (5)_____ the sun is seen reddened, as well as the light coming directly from the sun.

SubQuestion No : 22

Q.22 Select the most appropriate option to fill in blank no. 2.

- Ans** 1. has
 2. was
 3. will be
 4. has been

Question ID : 65497828436

Status : Answered

Chosen Option : 4

Comprehension:

In the following passage, some words have been deleted. Read the passage carefully and select the most appropriate option to fill in each blank.

When the air is clear, the sunset (1)_____ yellow, because the light from the sun has passed a long distance through air and the blue light (2)_____ scattered away. If the air is polluted with small particles, natural (3)_____ otherwise, the sunset will be more red. Sunsets over the sea may also be orange, (4)_____ salt particles in the air. The sky (5)_____ the sun is seen reddened, as well as the light coming directly from the sun.

SubQuestion No : 23

Q.23 Select the most appropriate option to fill in blank no. 3.

- Ans 1. if
 2. but
 3. or
 4. and

Question ID : 65497828437

Status : Answered

Chosen Option : 3

Comprehension:

In the following passage, some words have been deleted. Read the passage carefully and select the most appropriate option to fill in each blank.

When the air is clear, the sunset (1)_____ yellow, because the light from the sun has passed a long distance through air and the blue light (2)_____ scattered away. If the air is polluted with small particles, natural (3)_____ otherwise, the sunset will be more red. Sunsets over the sea may also be orange, (4)_____ salt particles in the air. The sky (5)_____ the sun is seen reddened, as well as the light coming directly from the sun.

SubQuestion No : 24

Q.24 Select the most appropriate option to fill in blank no. 4.

- Ans 1. for
 2. due to
 3. because
 4. as

Question ID : 65497828438

Status : Answered

Chosen Option : 2

Comprehension:

In the following passage, some words have been deleted. Read the passage carefully and select the most appropriate option to fill in each blank.

When the air is clear, the sunset (1)_____ yellow, because the light from the sun has passed a long distance through air and the blue light (2)_____ scattered away. If the air is polluted with small particles, natural (3)_____ otherwise, the sunset will be more red. Sunsets over the sea may also be orange, (4)_____ salt particles in the air. The sky (5)_____ the sun is seen reddened, as well as the light coming directly from the sun.

SubQuestion No : 25

Q.25 Select the most appropriate option to fill in blank no. 5.

- Ans 1. across
 2. through
 3. along
 4. around

Question ID : 65497828439

Status : Answered

Chosen Option : 3

Q.1 रिक्त स्थान भरने के लिए सबसे उपयुक्त शब्द का चयन करें।

तीनों _____ के स्वामी हैं इसलिए त्रिलोकीनाथ कहलाते हैं।

- Ans
- 1. धरती
 - 2. भवनो
 - 3. भुवनो
 - 4. आकाशो

Question ID : 65497828446
Status : Not Answered
Chosen Option : --

Q.2 इस प्रश्न में, एक शब्द चार अलग-अलग प्रकार से लिखा गया है, जिसमें से केवल एक को सही ढग से लिखा गया है। सही वर्तनी वाले शब्द का चयन करें।

- Ans
- 1. अनाधिकार
 - 2. अनाधीकार
 - 3. अनधिकार
 - 4. अनधीकार

Question ID : 65497828444
Status : Not Answered
Chosen Option : --

Q.3 दिए गए वाक्य में रेखांकित खड को प्रतिस्थापित करने के लिए सबसे उपयुक्त विकल्प का चयन करें। यदि इसे प्रतिस्थापित करने की आवश्यकता नहीं है, तो विकल्प 'किसी बदलाव की आवश्यकता नहीं है' का चयन करें।

मेरी गाय को छूने का उत्साह कभी कोई नहीं कर सकता क्योंकि वह मारती है।

- Ans
- 1. मेरी गाय को छूने की मेहनत
 - 2. मेरी गाय को छूने का हिम्मत
 - 3. किसी बदलाव की आवश्यकता नहीं है।
 - 4. मेरी गाय को छूने का साहस

Question ID : 65497828447
Status : Not Answered
Chosen Option : --

Q.4 दिए गए शब्द का विलोम चुनें।

द्रुत

- Ans
- 1. मथर
 - 2. अद्वैत
 - 3. जड़
 - 4. वेग

Question ID : 65497828448
Status : Not Answered
Chosen Option : --

Q.5 दिए गए वाक्य में रेखांकित खंड को प्रतिस्थापित करने के लिए सबसे उपयुक्त विकल्प का चयन करें। यदि इसे प्रतिस्थापित करने की आवश्यकता नहीं है, तो विकल्प 'किसी बदलाव की आवश्यकता नहीं है' का चयन करें।

पिताजी मेरे लिए कुछ कपड़े ले आये।

- Ans
- 1. मेरे को
 - 2. मुझे
 - 3. किसी बदलाव की आवश्यकता नहीं है।
 - 4. मेरे के लिए

Question ID : 65497828450

Status : Not Answered

Chosen Option : --

Q.6 दिए गए शब्द के समानार्थी शब्द का चयन करें।

कमल

- Ans
- 1. अमिय
 - 2. अमृत
 - 3. अरविन्द
 - 4. आयतन

Question ID : 65497828452

Status : Not Answered

Chosen Option : --

Q.7 मुझे मज़ा आती है। - रेखांकित शब्द की वृत्ति बताइए-

- Ans
- 1. लिंग के कारण
 - 2. वचन के कारण
 - 3. विशेषण के कारण
 - 4. कारक के कारण

Question ID : 65497828456

Status : Not Answered

Chosen Option : --

Q.8 इस प्रश्न में, एक शब्द चार अलग-अलग प्रकार से लिखा गया है, जिसमें से केवल एक को सही ढंग से लिखा गया है। सही वर्तनी वाले शब्द का चयन करें।

- Ans
- 1. मातर्हीन
 - 2. मातृहीन
 - 3. मार्तहीन
 - 4. मातृहिन

Question ID : 65497828445

Status : Not Answered

Chosen Option : --

Q.9 रिक्त स्थान को भरने के लिए सबसे उपयुक्त विकल्प का चयन करें।

मेरी _____ है कि मुझे चार दिन की छुट्टी दी जाए।

- Ans
- 1. प्रार्थना
 - 2. याचना
 - 3. पूजा
 - 4. आराधना

Question ID : 65497828459
Status : Not Answered
Chosen Option : --

Q.10 'वह बात जो जन साधारण में चलती आ रही है' इस वाक्यांश के लिए एक सार्थक शब्द दीजिए।

- Ans
- 1. कूपमडक
 - 2. किवदती
 - 3. किकर्तव्य
 - 4. कपोल-कल्पित

Question ID : 65497828440
Status : Not Answered
Chosen Option : --

Q.11 दिए गए शब्द के समानार्थी शब्द का चयन करें।

यमुना

- Ans
- 1. अर्कजा
 - 2. तड़ाग
 - 3. आपगा
 - 4. निम्नगा

Question ID : 65497828443
Status : Not Answered
Chosen Option : --

Q.12 'सामान्य नियम के विरुद्ध बात' वाक्यांश के लिए एक शब्द होगा-

- Ans
- 1. विवाद
 - 2. सवाद
 - 3. वाद
 - 4. अपवाद

Question ID : 65497828455
Status : Not Answered
Chosen Option : --

Q.13 'आँख लगाना' मुहावरे का सही अर्थ है-

- Ans
- 1. गहरी नींद आना
 - 2. आँख में दर्द होना
 - 3. गले पड़ना
 - 4. झपकी आना

Question ID : 65497828454
Status : Not Answered
Chosen Option : --

Q.14 निम्नलिखित प्रश्न में, दिए गए चार विकल्पों में से, उस विकल्प का चयन करें, जो मुहावरे का अर्थ व्यक्त करता है।

कथा के बैंगन

- Ans
- 1. मन गढ़त बातें
 - 2. कृपण व्यक्ति
 - 3. असभव वस्तु
 - 4. केवल दूसरों के लिए उपदेश

Question ID : 65497828449

Status : Not Answered

Chosen Option : --

Q.15 गुणदोष का समरूप मूल्यांकन करने वाले के लिए एक शब्द लिखिए-

- Ans
- 1. शास्त्रज्ञ
 - 2. ज्योतिषी
 - 3. जिज्ञासु
 - 4. समीक्षक

Question ID : 65497828458

Status : Not Answered

Chosen Option : --

Q.16 दिए गए वाक्य में रेखांकित खंड को प्रतिस्थापित करने के लिए सबसे उपयुक्त विकल्प का चयन करें। यदि इसे प्रतिस्थापित करने की आवश्यकता नहीं है, तो विकल्प 'किसी बदलाव की आवश्यकता नहीं है' का चयन करें।

मैं आपका दर्शन करने आया हूँ।

- Ans
- 1. किसी बदलाव की आवश्यकता नहीं है।
 - 2. मैं आपकी
 - 3. मैं आपके
 - 4. मैं आपसे

Question ID : 65497828453

Status : Not Answered

Chosen Option : --

Q.17 दिए गए वाक्य का वह भाग ज्ञात करें जिसमें कोई त्रुटि है। यदि कोई त्रुटि नहीं है, तो 'कोई त्रुटि नहीं है' विकल्प को चुनें।

स्टेशन पहुँचते ही वह फोन कर दिया।

- Ans
- 1. फोन कर दिया
 - 2. कोई त्रुटि नहीं है
 - 3. स्टेशन पहुँचते ही
 - 4. वह

Question ID : 65497828442

Status : Not Answered

Chosen Option : --

Q.18 दिए गए वाक्य का वह भाग ज्ञात करें जिसमें कोई त्रुटि है। यदि कोई त्रुटि नहीं है, तो 'कोई त्रुटि नहीं है' चुनें।

प्रधानाचार्य ने (1)/ हिंदी अध्यापक (2)/ को बुलाये। (3)/ कोई त्रुटि नहीं है(4)

Ans 1. 3

2. 4

3. 2

4. 1

Question ID : 65497828451

Status : Not Answered

Chosen Option : --

Q.19 रिक्त स्थान भरने के लिए सबसे उपयुक्त शब्द का चयन करें।

_____ से गहने बनते हैं।

Ans 1. टीन

2. सोने

3. लोहे

4. सोना

Question ID : 65497828441

Status : Not Answered

Chosen Option : --

Q.20 सद्भाव - रेखांकित शब्द का सही विलोम बताइए-

Ans 1. दुर्भाव

2. गुस्सा

3. स्वभाव

4. क्षम्य

Question ID : 65497828457

Status : Not Answered

Chosen Option : --

Comprehension:

गद्यांश को पढ़कर पूछे गये प्रश्नों के उत्तर लिखिए-

एक साधु थे। भिक्षाटन से मजे से दिन गुजारते और आनंदपूर्वक भजन करते थे। एक दिन महत्वाकांक्षा सिर पर चढ़ी, झोपड़ी के चूहों से निपटने के लिए एक बिल्ली पाली। बिल्ली के लिए दूध की जरूरत पड़ी - तो गाय खरीद कर लाए। गाय को साज-सभाल के लिए महिला की आवश्यकता पड़ी। महिला से शादी कर ली। परिवार बना। सत बनकर लोक कल्याण करने का लक्ष्य कहीं से कहीं चला गया। भौतिक आकांक्षाओं का जाल-जाल इतना बढ़ गया कि परमार्थ का लक्ष्य पूरा करने के लिए कुछ भी नहीं बचता था। सारी क्षमता उसी में खत्म जाती थी। सपनों का जमघट ही शेष रह जाता है। कहने का तात्पर्य यह है कि हमें हमारे लक्ष्य की ओर ध्यान देना चाहिए।

SubQuestion No : 21

Q.21 साधु अपना निर्वाह _____ करके करता था। रिक्त स्थान की पूर्ति कीजिए।

Ans 1. भिक्षाटन करके

2. बच्चों को पढ़ाकर

3. नौकरी करके

4. खेती करके

Question ID : 65497828461

Status : Not Answered

Chosen Option : --

Comprehension:

गद्यांश को पढ़कर पूछे गये प्रश्नों के उत्तर लिखिए-

एक साधु थे। भिक्षाटन से मजे से दिन गुजारते और आनंदपूर्वक भजन करते थे। एक दिन महत्वाकांक्षा सिर पर चढ़ी, झोपड़ी के चूहों से निपटने के लिए एक बिल्ली पाली। बिल्ली के लिए दूध की जरूरत पड़ी - तो गाय खरीद कर लाए। गाय को साज-सभाल के लिए महिला की आवश्यकता पड़ी। महिला से शादी कर ली। परिवार बना। सत बनकर लोक कल्याण करने का लक्ष्य कहीं से कहीं चला गया। भौतिक आकांक्षाओं का जाल-जंजाल इतना बढ़ गया कि परमार्थ का लक्ष्य पूरा करने के लिए कुछ भी नहीं बचता था। सारी क्षमता उसी में खत्म जाती थी। सपनों का जमघट ही शेष रह जाता है। कहने का तात्पर्य यह है कि हमें हमारे लक्ष्य की ओर ध्यान देना चाहिए।

SubQuestion No : 22

Q.22 'आवश्यकता' के स्थान पर उचित शब्द लिखिए।

- Ans
- 1. अत्रलमद
 - 2. जरूरत
 - 3. परिश्रम
 - 4. अवश्य

Question ID : 65497828462

Status : Not Answered

Chosen Option : --

Comprehension:

गद्यांश को पढ़कर पूछे गये प्रश्नों के उत्तर लिखिए-

एक साधु थे। भिक्षाटन से मजे से दिन गुजारते और आनंदपूर्वक भजन करते थे। एक दिन महत्वाकांक्षा सिर पर चढ़ी, झोपड़ी के चूहों से निपटने के लिए एक बिल्ली पाली। बिल्ली के लिए दूध की जरूरत पड़ी - तो गाय खरीद कर लाए। गाय को साज-सभाल के लिए महिला की आवश्यकता पड़ी। महिला से शादी कर ली। परिवार बना। सत बनकर लोक कल्याण करने का लक्ष्य कहीं से कहीं चला गया। भौतिक आकांक्षाओं का जाल-जंजाल इतना बढ़ गया कि परमार्थ का लक्ष्य पूरा करने के लिए कुछ भी नहीं बचता था। सारी क्षमता उसी में खत्म जाती थी। सपनों का जमघट ही शेष रह जाता है। कहने का तात्पर्य यह है कि हमें हमारे लक्ष्य की ओर ध्यान देना चाहिए।

SubQuestion No : 23

Q.23 महत्वाकांक्षा रेखांकित शब्द का उचित अर्थ लिखिए।

- Ans
- 1. दयालु
 - 2. लायक न होना
 - 3. उन्नति को प्राप्त करने की इच्छा
 - 4. बलवान होना

Question ID : 65497828463

Status : Not Answered

Chosen Option : --

Comprehension:

गद्यांश को पढ़कर पूछे गये प्रश्नों के उत्तर लिखिए-

एक साधु थे। भिक्षाटन से मजे से दिन गुजारते और आनंदपूर्वक भजन करते थे। एक दिन महत्वाकांक्षा सिर पर चढ़ी, झोपड़ी के चूहों से निपटने के लिए एक बिल्ली पाली। बिल्ली के लिए दूध की जरूरत पड़ी - तो गाय खरीद कर लाए। गाय को साज-सभाल के लिए महिला की आवश्यकता पड़ी। महिला से शादी कर ली। परिवार बना। सत बनकर लोक कल्याण करने का लक्ष्य कहीं से कहीं चला गया। भौतिक आकांक्षाओं का जाल-जंजाल इतना बढ़ गया कि परमार्थ का लक्ष्य पूरा करने के लिए कुछ भी नहीं बचता था। सारी क्षमता उसी में खत्म जाती थी। सपनों का जमघट ही शेष रह जाता है। कहने का तात्पर्य यह है कि हमें हमारे लक्ष्य की ओर ध्यान देना चाहिए।

SubQuestion No : 24

Q.24 परमार्थ- रेखांकित शब्द का विलोम बताइए।

- Ans
- 1. दुष्ट
 - 2. स्वार्थ
 - 3. क्रोधी
 - 4. लालची

Question ID : 65497828464

Status : Not Answered

Chosen Option : --

Comprehension:

गद्यांश को पढ़कर पूछे गये प्रश्नों के उत्तर लिखिए-

एक साधु थे। भिक्षाटन से मजे से दिन गुजारते और आनंदपूर्वक भजन करते थे। एक दिन महत्वाकांक्षा सिर पर चढ़ी, झोपड़ी के चूहों से निपटने के लिए एक बिल्ली पाली। बिल्ली के लिए दूध की जरूरत पड़ी - तो गाय खरीद कर लाए। गाय को साज-सभाल के लिए महिला की आवश्यकता पड़ी। महिला से शादी कर ली। परिवार बना। सत बनकर लोक कल्याण करने का लक्ष्य कहीं से कहीं चला गया। भौतिक आकांक्षाओं का जाल-जाल इतना बढ़ गया कि परमार्थ का लक्ष्य पूरा करने के लिए कुछ भी नहीं बचता था। सारी क्षमता उसी में खत्म जाती थी। सपनों का जमघट ही शेष रह जाता है। कहने का तात्पर्य यह है कि हमें हमारे लक्ष्य की ओर ध्यान देना चाहिए।

SubQuestion No : 25

Q.25 झोपड़ी के चूहों से निपटने के लिए साधु ने क्या किया?

Ans ✓ 1. बिल्ली पाली

✗ 2. दवा डालकर चूहों को मार दिया।

✗ 3. कुत्ते को पाला

✗ 4. कुछ भी नहीं किया

Question ID : 65497828465

Status : Not Answered

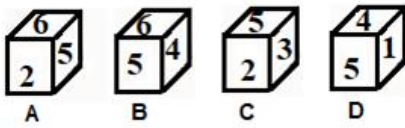
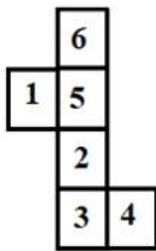
Chosen Option : --

KD Job Updates

Exam Date	24/11/2021
Exam Time :	4:00 PM - 5:30 PM
Subject	Constable GD 2021

Section : Part A General Intelligence and Reasoning

Q.1 Select the dice that can be formed by folding the given sheet along the lines.



- Ans
- 1. A, B, C and D
 - 2. Only A
 - 3. Only A and C
 - 4. Only B

Question ID : 65497835719
 Status : Answered
 Chosen Option : 2

Q.2 Select the number from among the given options that can replace the question mark (?) in the following series.

8, 25, 57, 221, 449, ?

- Ans
- 1. 1879
 - 2. 1798
 - 3. 1978
 - 4. 1789

Question ID : 65497835728
 Status : Not Answered
 Chosen Option : --

Q.3 Four letter-clusters have been given, out of which three are alike in some manner and one is different. Select the letter-cluster that is different.

- Ans 1. XVR
 2. KIEA
 3. RPLF
 4. MKGA

Question ID : 65497835713
 Status : Answered
 Chosen Option : 2

Q.4 Select the option that is related to the third term in the same way as the second term is related to the first term.

SYMBOL : YSBMLO :: BANQUETS : ?

- Ans 1. ABQNEUST
 2. NABEUQST
 3. QNABSTEU
 4. ABQNSTEU

Question ID : 65497835705
 Status : Answered
 Chosen Option : 1

Q.5 Four friends Rati, Areema , Sonali and Geet are sitting side by side on the bed facing towards north . Sonali is sitting towards left of Rati. Rati is sitting to immediate left of Areema. Geet is sitting between Rati and Sonali. Who is sitting at second place from the right end?

- Ans 1. Geet
 2. Rati
 3. Sonali
 4. Areema

Question ID : 65497835724
 Status : Answered
 Chosen Option : 2

Q.6 If the ratio of the present ages of Shikha and Rajkumar is 2 : 1, and 15 years ago the ratio of their ages was 3 : 1, then the present age (in years) of Shikha is:

- Ans 1. 45
 2. 75
 3. 60
 4. 30

Question ID : 65497835711
 Status : Answered
 Chosen Option : 3

Q.7 If 'P' denotes 'addition', 'Q' denotes 'multiplication', 'R' denotes 'subtraction', and 'S' denotes 'division', then what will be the value of the following expression?

45S (3P7) P5S (8S4) P9Q (15S5)

- Ans
- 1. 32
 - 2. 28
 - 3. 38
 - 4. 34

Question ID : 65497835718

Status : Answered

Chosen Option : 4

Q.8 Six friends R, S, T, U, V and W are sitting in a straight line. T is third from the left and fourth from the right. V is between T and S. Also, S is to the immediate left of U. R is between T and W. Find the position of V from the right side.

- Ans
- 1. Second
 - 2. Fifth
 - 3. Fourth
 - 4. Third

Question ID : 65497835715

Status : Answered

Chosen Option : 4

Q.9 Select the option that is related to the third number in the same way as the second number is related to the first number and the sixth number is related to the fifth number.

23 : 368 :: 25 : ? :: 21 : 294

- Ans
- 1. 382
 - 2. 450
 - 3. 441
 - 4. 371

Question ID : 65497835717

Status : Answered

Chosen Option : 2

Q.10 In a certain code language, 'DOCTOR' is written as 'SQWGTJ' and 'SINGER' is written as 'SGJRNY'. How will 'TAILOR' be written in that language?

- Ans
- 1. TOOMFZ
 - 2. TQQNEZ
 - 3. SQOMFX
 - 4. SQOMFZ

Question ID : 65497835708

Status : Answered

Chosen Option : 4

Q.11 Select the option that is related to the third word in the same way as the second word is related to the first word.

Syphilis : Bacteria :: Tinea pedis : ?

- Ans
- 1. Protozoa
 - 2. Algae
 - 3. Virus
 - 4. Fungi

Question ID : 65497835723
 Status : Answered
 Chosen Option : 1

Q.12 Select the correct mirror image of the given combination when the mirror is placed at 'PQ' as shown.



- Ans
- 1. MARKURDA
 - 2. MARADARAM
 - 3. RANKURDA
 - 4. MARADRAK

Question ID : 65497835721
 Status : Answered
 Chosen Option : 2

Q.13 Read the given statements and conclusions carefully. Assuming that the information given in the statements is true, even if it appears to be at variance with commonly known facts, decide which of the given conclusions logically follow(s) from the statements.

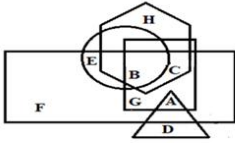
Statements:
 Some bags are pens.
 All pens are boxes.
 All bags are books.

Conclusions:
 I. Some books are boxes.
 II. Some boxes are bags.
 III. Some books are pens.

- Ans
- 1. Only conclusions I and III follow
 - 2. Only conclusions II and III follow
 - 3. Only conclusions I and II follow
 - 4. All conclusions I, II and III follow

Question ID : 65497835709
 Status : Answered
 Chosen Option : 2

Q.14 In the following figure, the square represents 'natural satellite', the circle represents 'stars', the rectangle represents 'planets', the hexagon represents 'atmosphere', and the triangle represents 'artificial satellite'.
Which letter represents planets but NOT stars which have atmosphere and natural satellite but NOT artificial satellite.



- Ans
- 1. C
 - 2. E
 - 3. A
 - 4. B

Question ID : 65497835725
Status : Answered
Chosen Option : 1

Q.15 Select the combination of letters that when sequentially placed in the blanks of the given series will complete the series.

I _ _ Q Z _ _ K _ _ I J _ Q Z

- Ans
- 1. IJKQZQK
 - 2. IQZIJKI
 - 3. JKIJQZK
 - 4. JKQZKI

Question ID : 65497835727
Status : Answered
Chosen Option : 3

Q.16 Select the option in which the given figure is embedded (rotation is NOT allowed).

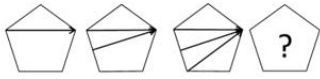


Ans

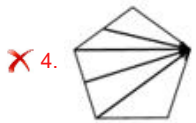
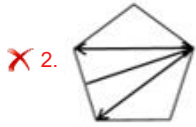
- 1.
- 2.
- 3.
- 4.

Question ID : 65497835720
Status : Answered
Chosen Option : 2

Q.17 Select the figure from among the given options that can replace the question mark (?) in the following series.



Ans

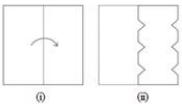


Question ID : 65497835729

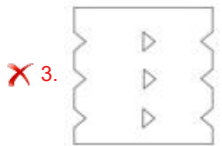
Status : Answered

Chosen Option : 3

Q.18 The sequence of folding a piece of paper and the manner in which the folded paper has been cut is shown in the following figures. How would this paper look when unfolded?



Ans



Question ID : 65497835712

Status : Answered

Chosen Option : 4

Q.19 Select the correct option that indicates the arrangement of the given words in the order in which they appear in an English dictionary.

1. Restates
2. Resistance
3. Restoration
4. Resonant
5. Resection

Ans 1. 5, 2, 4, 1, 3
 2. 5, 2, 1, 4, 3
 3. 5, 2, 4, 3, 1
 4. 5, 4, 2, 3, 1

Question ID : 65497835726
 Status : Answered
 Chosen Option : 1

Q.20 Select the letter-cluster from among the given options that can replace the question mark (?) in the following series.

AS, CQ, EO, ?

Ans 1. HM
 2. GN
 3. GM
 4. HN

Question ID : 65497835722
 Status : Answered
 Chosen Option : 3

Q.21 In a certain code language, 'BOWLER' is written as 'C p X M f S' and 'NEAT' is written as 'O f b U'. How will 'SERIOUS' be written in that language?

Ans 1. TfsJpUt
 2. TfSJPwt
 3. TfTjPVT
 4. TfSjpvT

Question ID : 65497835706
 Status : Answered
 Chosen Option : 4

Q.22 Select the option in which the numbers do NOT share the same relationship as that shared by the numbers in the given number-triad.

(3, 6, 18)

Ans 1. (9, 18, 54)
 2. (7, 14, 42)
 3. (8, 16, 56)
 4. (6, 12, 36)

Question ID : 65497835710
 Status : Answered
 Chosen Option : 4

Q.23 Select the number from among the given options that can replace the question mark (?) in the following series.

5, 16, 28, 36, 71, 90, 234, 342, ?

- Ans
- 1. 893
 - 2. 739
 - 3. 839
 - 4. 793

Question ID : 65497835716
Status : Not Answered
Chosen Option : --

Q.24 If 'A + B' means 'A is the daughter of B', 'A × B' means 'A is the sister of B', and 'A = B' means 'A is the wife of B', then how is G related to R in the expression 'C × G × U + M = R'?

- Ans
- 1. Son
 - 2. Mother
 - 3. Daughter
 - 4. Sister

Question ID : 65497835707
Status : Answered
Chosen Option : 3

Q.25 In a certain code language, 'TIKRI' is coded as '201811369'. How will 'BOARD' be coded in that language?

- Ans
- 1. 2151364
 - 2. 2151184
 - 3. 2301364
 - 4. 2301184

Question ID : 65497835714
Status : Answered
Chosen Option : 3

Section : Part B General Knowledge and General Awareness

Q.1 _____ served as the summer capital of British India between 1864 and 1939.

- Ans
- 1. Kalimpong
 - 2. Shimla
 - 3. Mount Abu
 - 4. Gangtok

Question ID : 65497835737
Status : Answered
Chosen Option : 2

Q.2 Which of the following law states that, "The force between two objects is directly proportional to the product of their masses?"

- Ans
- 1. law of motion
 - 2. law of change of momentum
 - 3. law of inertia
 - 4. law of gravitation

Question ID : 65497835749
Status : Answered
Chosen Option : 3

Q.3 On the basis of which phenomenon does a jet engine work?

- Ans
- 1. Conservation of acceleration
 - 2. Conservation of circular momentum
 - 3. Conservation of velocity
 - 4. Conservation of linear momentum

Question ID : 65497835741
Status : Answered
Chosen Option : 4

Q.4 Where will India's first home for transgender children in need of care and protection soon be established?

- Ans
- 1. Mumbai
 - 2. Bengaluru
 - 3. Delhi
 - 4. Chennai

Question ID : 65497835751
Status : Answered
Chosen Option : 2

Q.5 To which of the following states does the Aji Lamu folk dance belong?

- Ans
- 1. Assam
 - 2. Tripura
 - 3. Manipur
 - 4. Arunachal Pradesh

Question ID : 65497835739
Status : Answered
Chosen Option : 4

Q.6 At Indo Myanmar border which hills adjoin the Mizo Hills and Manipur Hills of the Eastern Highlands of India?

- Ans
- 1. Dongkya
 - 2. Toba Kakar
 - 3. Khasi
 - 4. Chin

Question ID : 65497835730
Status : Answered
Chosen Option : 3

Q.7 Which of the following Constitutional Amendment Acts made it compulsory for the President to give his assent to a Constitutional Amendment Bill?

- Ans
- 1. 100th Amendment Act, 2015
 - 2. 42nd Amendment Act, 1976
 - 3. 24th Amendment Act, 1971
 - 4. 44th Amendment Act, 1978

Question ID : 65497835747
Status : Answered
Chosen Option : 2

Q.8 Who among the following was honoured with the 2020 Nobel Prize for Literature?

- Ans
- 1. Alice Munro
 - 2. Louise Gluck
 - 3. Doris Lessing
 - 4. Kazuo Ishiguro

Question ID : 65497835744
Status : Answered
Chosen Option : 2

Q.9 Chirag Shetty who has been awarded with Arjuna Award in 2020 is related to which of the following sports?

- Ans
- 1. Cricket
 - 2. Hockey
 - 3. Swimming
 - 4. Badminton

Question ID : 65497835738
Status : Answered
Chosen Option : 4

Q.10 Chanakya was Prime Minister under the reign of _____.

- Ans
- 1. Chandragupta Maurya
 - 2. Harshavardhana
 - 3. Bindusara
 - 4. Ashoka

Question ID : 65497835731
Status : Answered
Chosen Option : 1

Q.11 In which city is the Salar Jung Museum situated?

- Ans
- 1. Chennai
 - 2. Bengaluru
 - 3. Hyderabad
 - 4. Thiruvananthapuram

Question ID : 65497835740
Status : Not Answered
Chosen Option : --

Q.12 'Swarnajayanti Gram Swarajgar Yojana' ('SGSY') was launched in the year _____.

- Ans 1. 1999
 2. 2005
 3. 2002
 4. 1995

Question ID : 65497835735
Status : Answered
Chosen Option : 3

Q.13 As per the Census of India 2011, a person aged _____ and above, who can both read and write with understanding in any language, is treated as literate.

- Ans 1. 6
 2. 4
 3. 7
 4. 5

Question ID : 65497835753
Status : Answered
Chosen Option : 1

Q.14 Who among the following was appointed as the Managing Director and Chief Executive Officer of India Post Payments Bank in October 2020?

- Ans 1. Seema Gupta
 2. Apurva Chandra
 3. J Venkatramu
 4. S Aparna

Question ID : 65497835745
Status : Answered
Chosen Option : 3

Q.15 A business enterprise that makes profit primarily through trade, buying goods cheap and selling them at higher prices is known as _____.

- Ans 1. mercenary
 2. bartering
 3. mercantile
 4. merchandising

Question ID : 65497835750
Status : Answered
Chosen Option : 3

Q.16 Small bead-like structures inside the ovary of a flower are called _____.

- Ans 1. ovules
 2. sepals
 3. stamen
 4. petals

Question ID : 65497835742
Status : Answered
Chosen Option : 4

Q.17 _____ bonds are issued in global capital markets outside India by international financial institutions to raise money and lend to Indian companies.

- Ans
- 1. Chandi
 - 2. Mithai
 - 3. Masala
 - 4. Papad

Question ID : 65497835736
Status : Answered
Chosen Option : 1

Q.18 The legendary footballer Diego Maradona, who died in November 2020, had led his country Argentina to a FIFA World Cup title win in:

- Ans
- 1. 1994
 - 2. 1986
 - 3. 1990
 - 4. 1982

Question ID : 65497835746
Status : Not Answered
Chosen Option : --

Q.19 What was the trilateral naval exercise between India, Japan and The US held in November 2020 called?

- Ans
- 1. Simbex -20
 - 2. Malabar
 - 3. Yudh Abhyas
 - 4. Mitra Shakti

Question ID : 65497835733
Status : Answered
Chosen Option : 2

Q.20 बाल न्याय (बच्चों की देखभाल और सुरक्षण) विधेयक, 2014 किस बात की अनुमति देता है?

- Ans
- 1. 14-18 वर्ष की आयु वाले किशोरों को सुधार घरों में भेजा जाना चाहिए।
 - 2. 16-18 वर्ष की आयु वाले किशोरों को अपराधों के लिए 60 दिनों तक सामुदायिक सेवा में रखने का आदेश दिया जाना चाहिए।
 - 3. 16-18 वर्ष की आयु वाले किशोरों के माता-पिता को किशोरों द्वारा किए गए अपराधों के लिए अपराधी ठहराने की कोशिश की जानी चाहिए।
 - 4. 16-18 वर्ष की आयु वाले किशोरों को जघन्य अपराधों के लिए वयस्कों की तरह सजा दी जानी चाहिए।

Question ID : 65497835732
Status : Not Answered
Chosen Option : --

Q.21 Which of the following tribes belongs to the Nilgiri Mountains?

- Ans
- 1. Angamis
 - 2. Todas
 - 3. Jarawas
 - 4. Onges

Question ID : 65497835734
Status : Answered
Chosen Option : 4

Q.22 Which of the following places/regions is the natural habitat of the Indian wild ass?

- Ans
- 1. Sunderbans
 - 2. Upper Himalayas
 - 3. Plains of Ganga
 - 4. Little Rann of Kutch

Question ID : 65497835743
Status : Answered
Chosen Option : 4

Q.23 Which of the following countries launched the 'Atal Innovation Mission–Sirius Innovation Programme 3.0' in November 2020?

- Ans
- 1. India and Russia
 - 2. India and Australia
 - 3. India and France
 - 4. India and Japan

Question ID : 65497835748
Status : Not Answered
Chosen Option : --

Q.24 How is the 'average income' of a country calculated?

- Ans
- 1. Total income of the country divided by its total population.
 - 2. Total income of all the residents of the country.
 - 3. Total income of the country minus the population.
 - 4. Total income of the country multiplied by its total population.

Question ID : 65497835752
Status : Answered
Chosen Option : 1

Q.25 Who among the following sportspersons is an Indian professional tennis player?

- Ans
- 1. Prakash Padukone
 - 2. Pullela Gopichand
 - 3. Rohan Bopanna
 - 4. Kuldeep Yadav

Question ID : 65497835754
Status : Answered
Chosen Option : 3

Section : Part C Elementary Mathematics

Q.1 A machine X can produce 1000 bolts in 4 hours and another machine Y can produce 1000 bolts in 12 hours. In how many hours can machines X and Y, working together at their respective constant rates, produce 1000 bolts?

- Ans
- 1. 3
 - 2. 2
 - 3. 6
 - 4. 4

Question ID : 65497835772
Status : Answered
Chosen Option : 1

KD JOB UPDATES

Q.2 In a company, there are 75% skilled workers and the remaining are unskilled. 84% of the skilled workers and 28% of the unskilled workers are permanent. If the number of temporary workers is 150, then the total number of workers in the company is:

- Ans**
- 1. 600
 - 2. 500
 - 3. 480
 - 4. 400

Question ID : **65497835761**
Status : **Answered**
Chosen Option : **2**

Q.3 Rumi earns 40% more wages than those earned by Erica. Charles earns 60% more wages than those earned by Erica. What percentage are the wages earned by Charles more than those earned by Rumi (correct to two decimal places)?

- Ans**
- 1. 12.29%
 - 2. 10.29%
 - 3. 14.9%
 - 4. 14.29%

Question ID : **65497835771**
Status : **Answered**
Chosen Option : **4**

Q.4 A metallic cone of radius 16 cm and height 36 cm is melted and made into spheres of radius 4 cm each. How many spheres are there?

- Ans**
- 1. 36
 - 2. 32
 - 3. 28
 - 4. 45

Question ID : **65497835779**
Status : **Answered**
Chosen Option : **1**

Q.5 Arun invested ₹7,000 at simple interest for two years at 10% per annum. Bharath invested a certain sum at simple interest for 5 years at 8% per annum. If the amount received by Arun is equal to the amount received by Bharath, then the sum invested by Bharath is:

- Ans**
- 1. ₹5,800
 - 2. ₹6,000
 - 3. ₹6,200
 - 4. ₹6,500

Question ID : **65497835763**
Status : **Answered**
Chosen Option : **2**

Q.6 A sum of money at simple interest amounts to ₹650 in 3 years and to ₹754 in 4 years. The sum is:

- Ans**
- 1. ₹308
 - 2. ₹318
 - 3. ₹388
 - 4. ₹338

Question ID : 65497835768
Status : Answered
Chosen Option : 4

Q.7 The present average age of A, B and C is 60 years and that of B and C is 50 years. What is A's present age?

- Ans**
- 1. 80 years
 - 2. 60 years
 - 3. 75 years
 - 4. 45 years

Question ID : 65497835765
Status : Answered
Chosen Option : 1

Q.8 The difference between the simple interest received from two different sources on ₹1,625 for 5 years is ₹32.50. Find the difference between their rates of interest.

- Ans**
- 1. 0.5%
 - 2. 0.6%
 - 3. 0.4%
 - 4. 0.3%

Question ID : 65497835778
Status : Answered
Chosen Option : 1

Q.9 An article is sold at ₹3,520 at a loss of 12%. At what price should it be sold to earn a profit of 18%?

- Ans**
- 1. ₹4,500
 - 2. ₹5,620
 - 3. ₹4,720
 - 4. ₹4,620

Question ID : 65497835762
Status : Answered
Chosen Option : 3

Q.10 When walking at $\frac{6}{7}$ of his usual speed, a man is 10 minutes late. What is the usual time taken by him to cover that distance?

- Ans**
- 1. 72 min
 - 2. 1 hour
 - 3. 1 hour 15 min
 - 4. 120 min

Question ID : 65497835773
Status : Answered
Chosen Option : 2

Q.11 A person gains 15% by selling an item for a certain price. If he sells it at double the price, then what will be his profit percentage?

- Ans**
- 1. 110%
 - 2. 115%
 - 3. 130%
 - 4. 120%

Question ID : 65497835776
Status : Answered
Chosen Option : 3

Q.12 If 20 men can complete a work in 48 days, then how many men should be employed to complete the same work in 40 days?

- Ans**
- 1. 28
 - 2. 24
 - 3. 22
 - 4. 26

Question ID : 65497835759
Status : Answered
Chosen Option : 2

Q.13 If a 9-digit number $5y97405x2$ is divisible by 72, then the value of $(x - 2y)$, for the greatest value of x , is:

- Ans**
- 1. 1
 - 2. 8
 - 3. 4
 - 4. 9

Question ID : 65497835760
Status : Answered
Chosen Option : 1

Q.14 Simplify the following expression.

$$27 \div 3 \times 4 + 4 \div 2 \text{ of } 2$$

Ans

1. $2\frac{1}{8}$

2. 37

3. $6\frac{1}{4}$

4. $1\frac{1}{8}$

Question ID : 65497835757

Status : Answered

Chosen Option : 2

Q.15 The average of 9 observations was 10, with that of the first 5 being 11 and that of the last 5 being 8. What was the 5th observation?

Ans

1. 5

2. 6

3. 4

4. 7

Question ID : 65497835769

Status : Answered

Chosen Option : 1

Q.16 $(1 - 1/2)(1 - 1/3)(1 - 1/4) \dots \dots \dots (1 - 1/23)$ when simplified will give the result as:

Ans

1. $1/22$

2. $1/2$

3. $1/23$

4. $1/3$

Question ID : 65497835774

Status : Not Answered

Chosen Option : --

Q.17 A wrist watch has been sold for ₹2,300 with a profit of 15%. How much is the profit?

Ans

1. ₹320

2. ₹280

3. ₹300

4. ₹250

Question ID : 65497835758

Status : Answered

Chosen Option : 3

Q.18 A train 180 metres in length, travelling at a uniform speed of 92 km/h, crosses another train, travelling in the same direction at a uniform speed of 74 km/h, in 60 seconds. The length of the second train is:

- Ans**
- 1. 150 metres
 - 2. 160 metres
 - 3. 120 metres
 - 4. 140 metres

Question ID : 65497835775
Status : Answered
Chosen Option : 3

Q.19 A shop announced a discount of 25% on trousers. Umesh went to the shop. He wanted to save ₹500 in discount. How many trousers should he buy to do so, if each trouser costs ₹250?

- Ans**
- 1. 8
 - 2. 6
 - 3. 4
 - 4. 5

Question ID : 65497835770
Status : Answered
Chosen Option : 1

Q.20 The ratio of two numbers is 2 : 5. If 7 is subtracted from each, the ratio of new numbers will be 13 : 43. Find the smallest number.

- Ans**
- 1. 20
 - 2. 30
 - 3. 10
 - 4. 15

Question ID : 65497835777
Status : Answered
Chosen Option : 3

Q.21 After allowing a discount of 30% on the marked price of an article, it is sold at ₹455. The marked price of the article is:

- Ans**
- 1. ₹550
 - 2. ₹650
 - 3. ₹554
 - 4. ₹560

Question ID : 65497835766
Status : Answered
Chosen Option : 2

Q.22 In a large school auditorium, if the teachers make rows of students of 16 each, there will be 14 students left. If they make rows of 24 each, then there will be 22 students left. If they make rows of 25 each, there will be 23 students left and if they make rows of 30 each, there will be 28 students left. What is the minimum number of students present in the school?

- Ans**
- 1. 1202
 - 2. 1200
 - 3. 1198
 - 4. 1189

Question ID : 65497835764
 Status : Answered
 Chosen Option : 3

Q.23 If the sides of a triangle are 8 cm, 8 cm and 12 cm, then what is the area of the triangle?

- Ans**
- 1. $12\sqrt{7}$ cm²
 - 2. 64 cm²
 - 3. 19 cm²
 - 4. 34 cm²

Question ID : 65497835756
 Status : Answered
 Chosen Option : 1

Q.24 The ratio of boys and girls in a school of 1600 students is 11 : 9. How many more boys should be admitted to the school to make the ratio 4 : 3?

- Ans**
- 1. 100
 - 2. 160
 - 3. 80
 - 4. 387

Question ID : 65497835755
 Status : Answered
 Chosen Option : 3

Q.25 A bag contains ₹441 in the form of 50 p, 25 p and 20 p coins in the ratio 4 : 3 : 2. Find the number of 25 p coins.

- Ans**
- 1. 240
 - 2. 420
 - 3. 400
 - 4. 460

Question ID : 65497835767
 Status : Answered
 Chosen Option : 2

Q.1 The following sentence has been split into four segments. Identify the segment that contains a grammatical error.

Tortoises inhabit all of / the world's landmasses / except Australia / and Antarctica.

- Ans** 1. Tortoises inhabit all of
 2. except Australia
 3. the world's landmasses
 4. and Antarctica

Question ID : **65497835791**
 Status : **Not Answered**
 Chosen Option : --

Q.2 Select the **INCORRECTLY** spelt word.

- Ans** 1. Nerture
 2. Capture
 3. Structure
 4. Lecture

Question ID : **65497835788**
 Status : **Not Answered**
 Chosen Option : --

Q.3 Select the option that can be used as a one-word substitute for the given group of words.

A medicine used to nullify the effect of poison

- Ans** 1. Antidote
 2. Antibiotic
 3. Antigen
 4. Antiseptic

Question ID : **65497835796**
 Status : **Not Answered**
 Chosen Option : --

Q.4 Select the most appropriate meaning of the given idiom.

Toe the line

- Ans** 1. Follow the rules
 2. Start early
 3. Touch the feet
 4. Finish first

Question ID : **65497835787**
 Status : **Not Answered**
 Chosen Option : --

Q.5 Select the most appropriate option that can substitute the underlined segment in the given sentence. If there is no need to substitute it, select 'No substitution required'.

It was such a funny story that we cannot help laughed.

- Ans
- 1. cannot help laughing
 - 2. could not help laughed
 - 3. No substitution required
 - 4. could not help laughing

Question ID : 65497835780
Status : Not Answered
Chosen Option : --

Q.6 Select the most appropriate option that can substitute the underlined word in the given sentence.

After the bag was shut and barrelled, he realised that he had forgotten to put in the book.

- Ans
- 1. strapped
 - 2. rebounded
 - 3. scrambled
 - 4. scratched

Question ID : 65497835783
Status : Not Answered
Chosen Option : --

Q.7 Select the most appropriate option to fill in the blank.

The boy walked at a fast _____.

- Ans
- 1. pose
 - 2. place
 - 3. peace
 - 4. pace

Question ID : 65497835798
Status : Not Answered
Chosen Option : --

Q.8 The following sentence has been split into four segments. Identify the segment that contains a grammatical error.

We bought / good quality / furnitures / for our new house.

- Ans
- 1. We bought
 - 2. furnitures
 - 3. good quality
 - 4. for our new house

Question ID : 65497835794
Status : Not Answered
Chosen Option : --

Q.9 Select the option that can be used as a one-word substitute for the given group of words.

A place where wild animals are kept in their natural environment

- Ans 1. Pantry
 2. Sanctuary
 3. Aviary
 4. Tannery

Question ID : 65497835786
 Status : Not Answered
 Chosen Option : --

Q.10 Select the correctly spelt word.

- Ans 1. Conscientios
 2. Conscentious
 3. Conscientous
 4. Conscientious

Question ID : 65497835797
 Status : Not Answered
 Chosen Option : --

Q.11 The following sentence has been divided into parts. One of them may contain an error. Select the part that contains the error from the given options. If you don't find any error, select 'No error' as your answer.

A good book / is one of / our best friends.

- Ans 1. is one of
 2. A good book
 3. No error
 4. our best friends

Question ID : 65497835781
 Status : Not Answered
 Chosen Option : --

Q.12 Select the most appropriate option to fill in the blank.

Suddenly, it started raining and I _____ an umbrella from the office.

- Ans 1. borrowed
 2. criticised
 3. lended
 4. substituted

Question ID : 65497835784
 Status : Not Answered
 Chosen Option : --

Q.13 Select the most appropriate synonym of the given word.

Amusing

- Ans 1. Tiresome
 2. Dull
 3. Laughable
 4. Wise

Question ID : 65497835782
Status : Not Answered
Chosen Option : --

Q.14 Select the most appropriate ANTONYM of the given word.

Diverge

- Ans 1. Depart
 2. Converge
 3. Contrast
 4. Submerge

Question ID : 65497835790
Status : Not Answered
Chosen Option : --

Q.15 Select the most appropriate ANTONYM of the given word.

Chaste

- Ans 1. Vicious
 2. Corrupt
 3. Cruel
 4. Virtuous

Question ID : 65497835795
Status : Not Answered
Chosen Option : --

Q.16 Select the option that can be used as a one-word substitute for the given group of words.

Light rain falling in small drops

- Ans 1. Downpour
 2. Stream
 3. Dew
 4. Drizzle

Question ID : 65497835793
Status : Not Answered
Chosen Option : --

Q.17 Select the most appropriate option that can substitute the underlined segment in the given sentence. If there is no need to substitute it, select 'No substitution required'.

My brother and Raj are good friends. They are knowing each other for at least 10 years.

- Ans
- 1. No substitution required
 - 2. knew
 - 3. have known
 - 4. are known

Question ID : 65497835799
Status : Not Answered
Chosen Option : --

Q.18 Select the most appropriate synonym of the given word.

Hurdle

- Ans
- 1. Rudiment
 - 2. Compliment
 - 3. Obstacle
 - 4. Assistance

Question ID : 65497835792
Status : Not Answered
Chosen Option : --

Q.19 Select the most appropriate option to fill in the blank.

The gentleman looked at the beautiful lady with great _____.

- Ans
- 1. vocation
 - 2. admiration
 - 3. reaction
 - 4. duration

Question ID : 65497835789
Status : Not Answered
Chosen Option : --

Q.20 Select the most appropriate meaning of the given idiom.

Hand in hand

- Ans
- 1. Easily
 - 2. Vigorously
 - 3. In totality
 - 4. Together

Question ID : 65497835785
Status : Not Answered
Chosen Option : --

Comprehension:

In the following passage, some words have been deleted. Read the passage carefully and select the most appropriate option to fill in each blank.

Dust storms do not just happen in the middle of the desert. They can happen in (1)_____ dry area where loose dirt can (2)_____ be picked up. Don't be surprised (3)_____ you suddenly saw a dust storm (4)_____ your way. Dust storms usually (5)_____ without warning.

SubQuestion No : 21

Q.21 Select the most appropriate option to fill in blank no.1.

- Ans 1. few
 2. all
 3. much
 4. any

Question ID : **65497835801**
 Status : **Not Answered**
 Chosen Option : --

Comprehension:

In the following passage, some words have been deleted. Read the passage carefully and select the most appropriate option to fill in each blank.

Dust storms do not just happen in the middle of the desert. They can happen in (1)_____ dry area where loose dirt can (2)_____ be picked up. Don't be surprised (3)_____ you suddenly saw a dust storm (4)_____ your way. Dust storms usually (5)_____ without warning.

SubQuestion No : 22

Q.22 Select the most appropriate option to fill in blank no.2.

- Ans 1. slowly
 2. casually
 3. properly
 4. easily

Question ID : **65497835802**
 Status : **Not Answered**
 Chosen Option : --

Comprehension:

In the following passage, some words have been deleted. Read the passage carefully and select the most appropriate option to fill in each blank.

Dust storms do not just happen in the middle of the desert. They can happen in (1)_____ dry area where loose dirt can (2)_____ be picked up. Don't be surprised (3)_____ you suddenly saw a dust storm (4)_____ your way. Dust storms usually (5)_____ without warning.

SubQuestion No : 23

Q.23 Select the most appropriate option to fill in blank no.3.

- Ans 1. whether
 2. so
 3. until
 4. if

Question ID : **65497835803**
 Status : **Not Answered**
 Chosen Option : --

Comprehension:

In the following passage, some words have been deleted. Read the passage carefully and select the most appropriate option to fill in each blank.

Dust storms do not just happen in the middle of the desert. They can happen in (1)_____ dry area where loose dirt can (2)_____ be picked up. Don't be surprised (3)_____ you suddenly saw a dust storm (4)_____ your way. Dust storms usually (5)_____ without warning.

SubQuestion No : 24

Q.24 Select the most appropriate option to fill in blank no.4.

- Ans 1. heading
 2. directing
 3. deciding
 4. lashing

Question ID : 65497835804
 Status : Not Answered
 Chosen Option : --

Comprehension:

In the following passage, some words have been deleted. Read the passage carefully and select the most appropriate option to fill in each blank.

Dust storms do not just happen in the middle of the desert. They can happen in (1)_____ dry area where loose dirt can (2)_____ be picked up. Don't be surprised (3)_____ you suddenly saw a dust storm (4)_____ your way. Dust storms usually (5)_____ without warning.

SubQuestion No : 25

Q.25 Select the most appropriate option to fill in blank no.5.

- Ans 1. show
 2. arrive
 3. enter
 4. reach

Question ID : 65497835805
 Status : Not Answered
 Chosen Option : --

Section : Part D Hindi

Q.1 रिक्त स्थान की पूर्ति के लिए सबसे उपयुक्त शब्द का चयन करें-

राम ने रावण का _____ किया।

- Ans 1. वध
 2. हत्या
 3. मृत्यु
 4. मौत

Question ID : 65497835824
 Status : Answered
 Chosen Option : 1

Q.2 रिक्त स्थान की पूर्ति के लिए सबसे उपयुक्त शब्द का चयन करें।

_____ के लिए पौष्टिक भोजन आवश्यक है।

- Ans 1. स्वास्थ्य
 2. जीवतता
 3. अस्वास्थ्य
 4. बीमारी

Question ID : 65497835812
 Status : Answered
 Chosen Option : 1

Q.3 उस विकल्प का चयन करें जो निम्न मुहावरे का सही अर्थ व्यक्त करता है।

हथेली पर सरसो उगाना

- Ans 1. लड़ाई करना
 2. खेती करना
 3. भाग जाना
 4. असंभव काम को संभव करना

Question ID : 65497835820
 Status : Answered
 Chosen Option : 4

Q.4 उस विकल्प का चयन करें जो निम्न मुहावरे का सही अर्थ व्यक्त करता है।

फूल झड़ना

- Ans 1. प्रिय वचन बोलना
 2. पतझड़ होना
 3. हल्की बातें बोलना
 4. सुन्दर लगना

Question ID : 65497835815
 Status : Answered
 Chosen Option : 1

Q.5 सही वर्तनी वाले शब्द का चयन करें।

- Ans 1. निरामिष
 2. निरामिश
 3. निर्मिश
 4. निरामिस

Question ID : 65497835816
 Status : Answered
 Chosen Option : 2

Q.6 रिक्त स्थान की पूर्ति के लिए सबसे उपयुक्त शब्द का चयन करें।

मेरे द्वारा _____ चित्र बैठक में टँगा था।

- Ans 1. चित्रित
 2. लिखित
 3. निर्मित
 4. रचित

Question ID : 65497835811
 Status : Answered
 Chosen Option : 4

Q.7 दिये गये वाक्यांश के लिए एक सार्थक शब्द का चयन कीजिए।

उसी समय में होने वाला या रहने वाला

- Ans 1. समदर्शी
 2. समसामयिक
 3. सार्वजनिक
 4. सामुदायिक

Question ID : 65497835808
 Status : Answered
 Chosen Option : 2

Q.8 सही वर्तनी वाले शब्द का चयन करें।

- Ans 1. हसतान्तरित
 2. हस्ततरित
 3. हस्तातरीत
 4. हस्तातरित

Question ID : 65497835817
 Status : Answered
 Chosen Option : 1

Q.9 दिए गए वाक्य का वह भाग ज्ञात करें जिसमें कोई त्रुटि है। यदि कोई त्रुटि नहीं है, तो 'कोई त्रुटि नहीं है' चुनें।

शत्रु पर (1)/ गोले और तोपों से (2)/ आक्रमण कर दिया गया। (3)/ कोई त्रुटि नहीं है(4)

- Ans 1. 3
 2. 1
 3. 4
 4. 2

Question ID : 65497835806
 Status : Answered
 Chosen Option : 2

Q.10 दिए गए वाक्य में रेखांकित खंड को प्रतिस्थापित करने के लिए सबसे उपयुक्त विकल्प का चयन करें। यदि इसे प्रतिस्थापित करने की आवश्यकता नहीं है, तो विकल्प 'किसी बदलाव की आवश्यकता नहीं है' का चयन करें।

न जाने क्यों, तुम बेफ़िज़ूल की बातों पर बहस कर लेते हो।

- Ans
- 1. बेफ़िज़ूल में
 - 2. बेफ़िज़ूल की बातों में
 - 3. किसी बदलाव की आवश्यकता नहीं है।
 - 4. फ़िज़ूल की बातों पर

Question ID : 65497835823

Status : Answered

Chosen Option : 3

Q.11 'युद्ध करने की प्रबल इच्छा' इस वाक्यांश के लिए एक सार्थक शब्द दीजिए।

- Ans
- 1. दुर्जेय
 - 2. युयुत्सु
 - 3. युयुत्सा
 - 4. अजातशत्रु

Question ID : 65497835809

Status : Answered

Chosen Option : 2

Q.12 दिए गए वाक्य का वह भाग ज्ञात करें जिसमें कोई त्रुटि है। यदि कोई त्रुटि नहीं है, तो 'कोई त्रुटि नहीं है' चुनें।

संसार की प्राचीन भाषा में (1) संस्कृत प्राचीनतम (2) भाषा मानी जाती है। (3) कोई त्रुटि नहीं है (4)

- Ans
- 1. 3
 - 2. 2
 - 3. 4
 - 4. 1

Question ID : 65497835813

Status : Answered

Chosen Option : 4

Q.13 दिए गए वाक्य में रेखांकित खंड को प्रतिस्थापित करने के लिए सबसे उपयुक्त विकल्प का चयन करें। यदि इसे प्रतिस्थापित करने की आवश्यकता नहीं है, तो विकल्प 'किसी बदलाव की आवश्यकता नहीं है' का चयन करें।

यह बात तुम लोगों के ऊपर निर्भर है।

- Ans
- 1. लोग के ऊपर
 - 2. लोगों पर
 - 3. लोगों के पर
 - 4. किसी बदलाव की आवश्यकता नहीं है।

Question ID : 65497835818

Status : Answered

Chosen Option : 2

Q.14 दिए गए वाक्य में रेखांकित खंड को प्रतिस्थापित करने के लिए सबसे उपयुक्त विकल्प का चयन करें।
यदि इसे प्रतिस्थापित करने की आवश्यकता नहीं है, तो विकल्प 'किसी बदलाव की आवश्यकता नहीं है'
का चयन करें।

हम दसवी कक्षा के छात्र आपको निवेदन करते हैं।

- Ans
- 1. किसी बदलाव की आवश्यकता नहीं है।
 - 2. हम दसवी कक्षा के छात्र
 - 3. आपसे
 - 4. निवेदन करते हैं

Question ID : 65497835810
Status : Answered
Chosen Option : 3

Q.15 दिए गए शब्द का विलोम चुनें।

अपेक्षा

- Ans
- 1. उपेक्षा
 - 2. सापेक्ष
 - 3. अनापेक्षा
 - 4. निरपेक्ष

Question ID : 65497835819
Status : Answered
Chosen Option : 1

Q.16 दिए गए शब्द का समानार्थी शब्द चुनें-

झगड़ा

- Ans
- 1. खार
 - 2. विरोध
 - 3. बैर
 - 4. द्वन्द्व

Question ID : 65497835822
Status : Answered
Chosen Option : 2

Q.17 'जो पढ़ा न जा सके' वाक्यांश के लिए एक शब्द होगा-

- Ans
- 1. अकथनीय
 - 2. अपठनीय
 - 3. पठित
 - 4. अपठित

Question ID : 65497835825
Status : Answered
Chosen Option : 2

Q.18 विलोम शब्दों का सही युग्म निम्न में से कौन सा है?

- Ans 1. क्रोध - गुस्सा
 2. आस्तिक - नास्तिक
 3. धरा - पृथ्वी
 4. महात्मा - सत

Question ID : 65497835807

Status : Answered

Chosen Option : 2

Q.19 दिए गए शब्द का समानार्थी शब्द बताइए-

हिरन

- Ans 1. गज
 2. मृग
 3. दादुर
 4. केसरी

Question ID : 65497835814

Status : Answered

Chosen Option : 3

Q.20 दिए गए वाक्य का वह भाग ज्ञात करें जिसमें कोई त्रुटि है। यदि कोई त्रुटि नहीं है, तो 'कोई त्रुटि नहीं है' चुनें।

मैंने अपने (1)/ मित्र के नाम क्लर्क को (2)/ एक पत्र लिखाया। (3)/ कोई त्रुटि नहीं है। (4)

- Ans 1. 1
 2. 3
 3. 4
 4. 2

Question ID : 65497835821

Status : Answered

Chosen Option : 4

Comprehension:

दिए गए गद्यांश में से कुछ शब्द हटा दिए गए हैं। संबंधित प्रश्नों में प्रत्येक सख्या के लिए सबसे उपयुक्त विकल्प का चयन कीजिए।

(1) _____ का काम बहुत अशो में (2) _____ के काम से मिलताजुलता है। मधुमक्खिया मकरंद सग्रह करने के लिए कोसों के चक्कर लगाती हैं और अच्छे-अच्छे (3) _____ पर बैठकर उनका रस लेती हैं। तभी तो उनके मधु में ससार की सर्वश्रेष्ठ (4) _____ रहती है। यदि आप अच्छे (5) _____ बनाना चाहते हैं तो आपको भी यह वृत्ति ग्रहण करनी चाहिए।

SubQuestion No : 21

Q.21 गद्यांश के रिक्त स्थान (1) के लिए सर्वाधिक उपयुक्त शब्द होगा-

- Ans 1. अभियता
 2. वकील
 3. राजनेता
 4. लेखक

Question ID : 65497835827

Status : Answered

Chosen Option : 4

Comprehension:

दिए गए गद्यांश में से कुछ शब्द हटा दिए गए हैं। सबंधित प्रश्नों में प्रत्येक सख्या के लिए सबसे उपयुक्त विकल्प का चयन कीजिए।

(1) _____ का काम बहुत अशो में (2) _____ के काम से मिलताजुलता है। मधुमक्खिया मकरद सग्रह करने के लिए कोसो के चक्कर लगाती हैं और अच्छे-अच्छे (3) _____ पर बैठकर उनका रस लेती हैं। तभी तो उनके मधु में ससार की सर्वश्रेष्ठ (4) _____ रहती है। यदि आप अच्छे (5) _____ बनाना चाहते हैं तो आपको भी यह वृत्ति ग्रहण करनी चाहिए।

SubQuestion No : 22

Q.22 गद्यांश के रिक्त स्थान (2) के लिए सर्वाधिक उपयुक्त शब्द होगा-

- Ans 1. चींटियो
 2. मधुमक्खियो
 3. पछियो
 4. पशुओ

Question ID : 65497835828

Status : Answered

Chosen Option : 2

Comprehension:

दिए गए गद्यांश में से कुछ शब्द हटा दिए गए हैं। सबंधित प्रश्नों में प्रत्येक सख्या के लिए सबसे उपयुक्त विकल्प का चयन कीजिए।

(1) _____ का काम बहुत अशो में (2) _____ के काम से मिलताजुलता है। मधुमक्खिया मकरद सग्रह करने के लिए कोसो के चक्कर लगाती हैं और अच्छे-अच्छे (3) _____ पर बैठकर उनका रस लेती हैं। तभी तो उनके मधु में ससार की सर्वश्रेष्ठ (4) _____ रहती है। यदि आप अच्छे (5) _____ बनाना चाहते हैं तो आपको भी यह वृत्ति ग्रहण करनी चाहिए।

SubQuestion No : 23

Q.23 गद्यांश के रिक्त स्थान (3) के लिए सर्वाधिक उपयुक्त शब्द होगा-

- Ans 1. टहनियो
 2. फूलो
 3. पेड़ो
 4. पत्तो

Question ID : 65497835829

Status : Answered

Chosen Option : 2

Comprehension:

दिए गए गद्यांश में से कुछ शब्द हटा दिए गए हैं। सबंधित प्रश्नों में प्रत्येक सख्या के लिए सबसे उपयुक्त विकल्प का चयन कीजिए।

(1) _____ का काम बहुत अशो में (2) _____ के काम से मिलताजुलता है। मधुमक्खिया मकरद सग्रह करने के लिए कोसो के चक्कर लगाती हैं और अच्छे-अच्छे (3) _____ पर बैठकर उनका रस लेती हैं। तभी तो उनके मधु में ससार की सर्वश्रेष्ठ (4) _____ रहती है। यदि आप अच्छे (5) _____ बनाना चाहते हैं तो आपको भी यह वृत्ति ग्रहण करनी चाहिए।

SubQuestion No : 24

Q.24 गद्यांश के रिक्त स्थान (4) के लिए सर्वाधिक उपयुक्त शब्द होगा-

- Ans 1. सुदरता
 2. चतुरता
 3. मधुरता
 4. कटुता

Question ID : 65497835830

Status : Answered

Chosen Option : 3

Comprehension:

दिए गए गद्यांश में से कुछ शब्द हटा दिए गए हैं। संबंधित प्रश्नों में प्रत्येक सख्या के लिए सबसे उपयुक्त विकल्प का चयन कीजिए।

(1) _____ का काम बहुत अशो में (2) _____ के काम से मिलताजुलता है। मधुमक्खिया मकरद सग्रह करने के लिए कोसो के चक्कर लगाती है और अच्छे-अच्छे (3) _____ पर बैठकर उनका रस लेती है। तभी तो उनके मधु में ससार की सर्वश्रेष्ठ (4) _____ रहती है। यदि आप अच्छे (5) _____ बनाना चाहते हैं तो आपको भी यह वृत्ति ग्रहण करनी चाहिए।

SubQuestion No : 25

Q.25 गद्यांश के रिक्त स्थान (5) के लिए सर्वाधिक उपयुक्त शब्द होगा-

- Ans 1. समाजसेवी
 2. पुलिस
 3. पत्रकार
 4. लेखक

Question ID : 65497835831

Status : Answered

Chosen Option : 4

KD Job Updates

Exam Date	18/11/2021
Exam Time :	12:30 PM - 2:00 PM
Subject	Constable GD 2021

Section : Part A General Intelligence and Reasoning

Q.1 Select the option that is related to the third number in the same way as the second number is related to the first number.

70 : 8 :: 87 : ?

- Ans
- 1. 8
 - 2. 9
 - 3. 6
 - 4. 7

Question ID : 65497830638
 Status : Answered
 Chosen Option : 2

Q.2 Select the correct option that indicates the arrangement of the given words in the order in which they appear in an English dictionary.

1. Hostile
2. Hostel
3. Hospital
4. House
5. Hopeless

- Ans
- 1. 5, 3, 1, 2, 4
 - 2. 3, 5, 2, 1, 4
 - 3. 5, 3, 2, 1, 4
 - 4. 4, 3, 2, 1, 5

Question ID : 65497830625
 Status : Answered
 Chosen Option : 1

Q.3 Eight friends, A, B, C, D, E, F, G and H, are sitting around a round table at equal distance between each other, facing the centre of the table. D is sitting between F and H. A is not sitting between B and G. C is sitting third to the right of A. E is sitting second to the left of D. Who is sitting opposite to A?

- Ans
- 1. E
 - 2. F
 - 3. H
 - 4. D

Question ID : 65497830637
 Status : Marked For Review
 Chosen Option : 3

Q.4 P, Q, R, S, T and U are sitting on a bench. Q is at the right end. R is sitting to the immediate right of S. U is sitting to the immediate left of T, and T is sitting to the immediate left of Q. P is sitting to the immediate left of S. Who is sitting at the left end?

- Ans
- 1. U
 - 2. T
 - 3. R
 - 4. P

Question ID : 65497830646
 Status : Answered
 Chosen Option : 4

Q.5 Select the number from among the given options that can replace the question mark (?) in the following series.

123, 98, 82, 73, 69, ?

- Ans
- 1. 49
 - 2. 68
 - 3. 52
 - 4. 57

Question ID : 65497830647
 Status : Answered
 Chosen Option : 2

Q.6 A number when added to 4 times to itself, gets equal to 10 times to its predecessor. Find the number.

- Ans
- 1. 2
 - 2. 10
 - 3. 8
 - 4. 5

Question ID : 65497830635
 Status : Answered
 Chosen Option : 1

Q.7 Select the combination of letters that when sequentially placed in the blanks of the given series will complete the series.

Z _ K F _ O K G Z _ K _ Z O _ I

- Ans
- 1. OZOHK
 - 2. OZKHK
 - 3. OZOHZ
 - 4. KZOHK

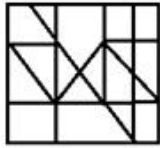
Question ID : 65497830626
 Status : Answered
 Chosen Option : 1

Q.8 Select the option in which the given figure is embedded (rotation is NOT allowed).

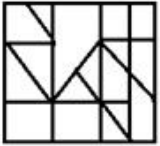


Ans

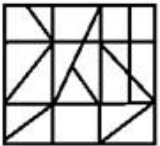
✓ 1.



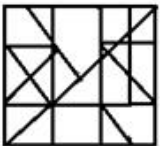
✗ 2.



✗ 3.



✗ 4.



Question ID : 65497830641

Status : Answered

Chosen Option : 1

Q.9 'Dictionary' is related to 'Meaning' in the same way as 'Encyclopaedia' is related to

_____.

Ans ✗ 1. Synonyms

✗ 2. Phrase

✗ 3. News

✓ 4. Knowledge

Question ID : 65497830644

Status : Answered

Chosen Option : 4

Q.10 Read the given statements and conclusions carefully. Assuming that the information given in the statements is true, even if it appears to be at variance with commonly known facts, decide which of the given conclusions logically follow(s) from the statements.

Statements:

All girls are actors.
All actors are singers.

Conclusions:

1. Some girls are not singers.
2. No actor is a girl.
3. All girls are singers.

- Ans** 1. Both conclusions 1 and 3 follow
 2. Only conclusion 3 follows
 3. Only conclusion 1 follows
 4. Only conclusion 2 follows

Question ID : 65497830633

Status : Answered

Chosen Option : 2

Q.11 Select the letter-cluster from among the given options that can replace the question mark (?) in the following series.

FPW, EQV, DRU, ?

- Ans** 1. COS
 2. CST
 3. TWX
 4. CSG

Question ID : 65497830642

Status : Answered

Chosen Option : 2

Q.12 In a certain code language, 'GREW' is coded as '209224'. How will 'TYPE' be coded in that language?

- Ans** 1. 721122
 2. 721162
 3. 202511
 4. 511237

Question ID : 65497830645

Status : Answered

Chosen Option : 1

Q.13 In a certain code language, 'Where are you' is written as 'me ki na', 'When you come' is written as 'bel na se', and 'Come back home' is written as 'se ne jo'. How will 'When' be written in that language?

- Ans** 1. ki
 2. se
 3. me
 4. bel

Question ID : 65497830632

Status : Answered

Chosen Option : 4

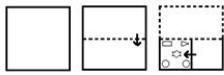
Q.14 Study the given pattern carefully and select the number that can replace the question mark (?) in it.

9 18 ?
 18 32 79
 27 58 46

- Ans 1. 22
 2. 21
 3. 26
 4. 25

Question ID : 65497830634
 Status : Answered
 Chosen Option : 4

Q.15 The sequence of folding a piece of paper and the manner in which the folded paper has been cut is shown in the following figures. How would this paper look when unfolded?



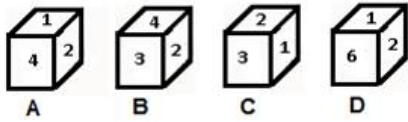
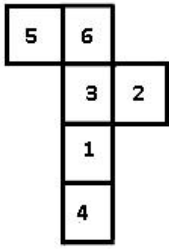
Ans

- 1.
- 2.
- 3.
- 4.

KD Job Updates

Question ID : 65497830636
 Status : Answered
 Chosen Option : 2

Q.16 Select the dice that can be formed by folding the given sheet along the lines.



- Ans
- 1. Only A
 - 2. D and B
 - 3. A and C
 - 4. Only C

Question ID : 65497830640
 Status : Answered
 Chosen Option : 3

KD Job Updates

Q.17 Select the figure that will replace the question mark (?) in the following figure series.



Ans

- ✗ 1.
- ✗ 2.
- ✓ 3.
- ✗ 4.

Question ID : 65497830628
 Status : Answered
 Chosen Option : 3

Q.18 Select the option that is related to the third term in the same way as the second term is related to the first term.

CREAM : FPJYZ :: CHECK : ?

- ✗ 1. FZJFV
- ✓ 2. FFJAV
- ✗ 3. FPJZV
- ✗ 4. FFJFV

Question ID : 65497830629
 Status : Answered
 Chosen Option : 2

Q.19 In a certain code language, 'CHAINED' is written as 'EJYGPCF'. How will 'MEADOW' be written in that language?



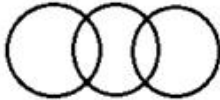

- ✗ 1. PCYFMY
- ✗ 2. OCYFNY
- ✓ 3. OCYFMY
- ✗ 4. PCYFQY

Question ID : 65497830630
 Status : Answered
 Chosen Option : 3

Q.20 Select the Venn diagram that best represents the relationship between the following classes.

Passengers, Flight, Train

Ans

- 1. 
- 2. 
- 3. 
- 4. 

Question ID : 65497830649

Status : Answered

Chosen Option : 3

Q.21 Select the number from among the given options that can replace the question mark (?) in the following series.

17, 18, 26, 53, 117, ?

- Ans
- 1. 302
 - 2. 242
 - 3. 336
 - 4. 232

Question ID : 65497830627

Status : Answered

Chosen Option : 2

Q.22 If 'A' denotes 'addition', 'B' denotes 'subtraction', 'C' denotes 'multiplication' and 'D' denotes 'division', then what will be the value of the following expression?

6 C (57 B 8) D 7 B 32 A 9

- Ans
- 1. 27
 - 2. 18
 - 3. 15
 - 4. 19

Question ID : 65497830639

Status : Answered

Chosen Option : 4

Q.23 Select the correct mirror image of the given combination when the mirror is placed at PQ as shown.

QZ9JFN |

- Ans
- 1. MFI1850
 - 2. MFI1850
 - 3. MFI1850
 - 4. QZ9JFN

Question ID : 65497830648
 Status : Answered
 Chosen Option : 2

Q.24 Four letter-clusters have been given, out of which three are alike in some manner and one is different. Select the letter-cluster that is different.

- Ans
- 1. ODS
 - 2. AHI
 - 3. GNU
 - 4. DOU

Question ID : 65497830643
 Status : Answered
 Chosen Option : 4

Q.25 Ajay and Charul are brother and sister. Manoj and Darshan are the sons of Kripal and Sona. Sona is the mother-in-law of Charul's mother Swapnil. Neha, Niti and Nakul are the daughters of Manoj and the only cousins of Ajay. How many children does Darshan have?

- Ans
- 1. 4
 - 2. 1
 - 3. 3
 - 4. 2

Question ID : 65497830631
 Status : Marked For Review
 Chosen Option : 4

Section : Part B General Knowledge and General Awareness

Q.1 How many Articles and Schedules, respectively, were there in the Constitution of India in 2019?

- Ans
- 1. 398 and 6
 - 2. 395 and 8
 - 3. 392 and 7
 - 4. 396 and 8

Question ID : 65497830669
 Status : Answered
 Chosen Option : 4

Q.2 Which of the following Indians made the country proud in Malaysia by being the fastest Indian to complete the Ironman Malaysia triathlon in record time?

- Ans
- 1. Hiren Patel
 - 2. Akshay Samel
 - 3. Arunaabh Shah
 - 4. Swaroop Singh Kuntal

Question ID : 65497830671
 Status : Not Answered
 Chosen Option : --

Q.3 Which process is used by the unicellular freshwater organisms and most plant cells to take in water?

- Ans
- 1. Morphogenesis
 - 2. Osmosis
 - 3. Hybridisation
 - 4. Tropism

Question ID : 65497830651
 Status : Answered
 Chosen Option : 2

Q.4 As per FIFA Regulations, a football (soccer) match consists of two 45 minutes halves with a _____ rest period in between.

- Ans
- 1. 20 minutes
 - 2. 15 minutes
 - 3. 10 minutes
 - 4. 30 minutes

Question ID : 65497830674
 Status : Answered
 Chosen Option : 3

Q.5 Which scientist among the following coined the term 'protoplasm' for the fluid substance of the cell?

- Ans
- 1. Leeuwenhoek
 - 2. Purkinje
 - 3. Virchow
 - 4. Schwann

Question ID : 65497830664
 Status : Answered
 Chosen Option : 2

Q.6 Who among the following wrote the book 'India Wins Freedom' giving an insider's view of India's freedom struggle?

- Ans
- 1. Sardar Vallabhbhai Patel
 - 2. Dr. BR Ambedkar
 - 3. Jawaharlal Nehru
 - 4. Maulana Abul Kalam Azad

Question ID : 65497830654
 Status : Answered
 Chosen Option : 4

Q.7 Who among the following was the first Indian Women Athlete to win a gold medal in any Asian Games?

- Ans
- 1. Durba Banarjee
 - 2. Karnam Malleswari
 - 3. Arti Saha
 - 4. Kamaljeet Sandhu

Question ID : 65497830650
Status : Answered
Chosen Option : 4

Q.8 Which of the following events occurred before the arrival of Simon Commission in India?

- Ans
- 1. The First Round Table Conference
 - 2. Gandhi-Irwin Pact
 - 3. Quit India Movement
 - 4. Kakori Conspiracy

Question ID : 65497830661
Status : Answered
Chosen Option : 3

Q.9 The aim of _____ is to promote the Panchayati Raj Institutions in the country.

- Ans
- 1. the Constitution (Sixtieth Amendment) Act, 1988
 - 2. the Constitution (Forty-third Amendment) Act, 1977
 - 3. the Constitution (Seventy-third Amendment) Act, 1992
 - 4. the Constitution (Thirty-Seventh Amendment) Act, 1975

Question ID : 65497830656
Status : Answered
Chosen Option : 3

Q.10 Who among the following won the Dada Saheb Phalke Award in 2020 for his documentary 'Chi Lupo'?

- Ans
- 1. Kasinathuni Viswanath
 - 2. Kezang D Thongdok
 - 3. B Nagi Reddy
 - 4. Akkineni Nageswara Rao

Question ID : 65497830668
Status : Answered
Chosen Option : 2

Q.11 Who among the following was the youngest umpire to enter the ICC Elite Panel in 2020?

- Ans
- 1. Aleem Dar
 - 2. Nitin Menon
 - 3. Sundaram Ravi
 - 4. Nigel Llong

Question ID : 65497830653
Status : Answered
Chosen Option : 3

Q.12 In how many phases was the General Election to the Legislative Assembly of Bihar 2020 conducted by the Election Commission of India?

- Ans 1. Three
 2. Two
 3. Four
 4. Five

Question ID : 65497830657
Status : Answered
Chosen Option : 3

Q.13 Which of the following is a conventional source of energy?

- Ans 1. Biogas
 2. Wind energy
 3. Solar energy
 4. Firewood

Question ID : 65497830667
Status : Answered
Chosen Option : 3

Q.14 Which of the following is a statistical tool that measures a country's overall achievement in terms of health, education and income?

- Ans 1. Human development index
 2. Per capita income
 3. Life expectancy
 4. Political stability

Question ID : 65497830659
Status : Answered
Chosen Option : 1

Q.15 Who among the following introduced the 'Doctrine of Lapse'?

- Ans 1. Lord Ripon
 2. Warren Hastings
 3. Lord Canning
 4. Lord Dalhousie

Question ID : 65497830655
Status : Answered
Chosen Option : 4

Q.16 Who among the following constructed the Jamat Khana Mosque in Delhi?

- Ans 1. Quṭb al-Dīn Mubārak Shah
 2. Jalal-ud-din Firuz Khilji
 3. Ala-ud-din Khilji
 4. Khizr Khan

Question ID : 65497830662
Status : Answered
Chosen Option : 3

Q.17 The property of metals to produce ringing sound on being struck with a hard object is known as _____.

- Ans
- 1. Malleability
 - 2. Ductility
 - 3. Opaque
 - 4. Sonorous

Question ID : 65497830663
Status : Answered
Chosen Option : 4

Q.18 What makes the soil fertile?

- Ans
- 1. Overabundance of acidic materials in the soil
 - 2. The right mix of minerals and inorganic matter
 - 3. The right mix of minerals and organic matter
 - 4. High levels of salt in the soil

Question ID : 65497830673
Status : Answered
Chosen Option : 3

Q.19 As of 2020, in which of the following cities is the headquarters of Axis Bank located?

- Ans
- 1. Ahmedabad
 - 2. Bengaluru
 - 3. Chennai
 - 4. Mumbai

Question ID : 65497830660
Status : Answered
Chosen Option : 4

Q.20 Which of the following sports personalities won the Rajiv Gandhi Khel Ratna Award 2020?

- Ans
- 1. Vishesh Bhriguvanshi
 - 2. Dharmendra Tiwary
 - 3. Mariyappan Thangavelu
 - 4. Vijay Bhalchandra Munishwar

Question ID : 65497830670
Status : Answered
Chosen Option : 3

Q.21 Devprayag is the place where the Bhagirathi joins _____.

- Ans
- 1. Ghaghara
 - 2. Meghna
 - 3. Gandak
 - 4. Alaknanda

Question ID : 65497830658
Status : Answered
Chosen Option : 4

Q.22 _____ is an asset that the borrower owns and uses as a guarantee to a lender, until the loan is repaid.

- Ans
- 1. Accessory
 - 2. Ancillary
 - 3. Bail
 - 4. Collateral

Question ID : 65497830672
Status : Answered
Chosen Option : 1

Q.23 What are the two languages in which the Kandahar Bilingual Rock Inscriptions were written?

- Ans
- 1. Arabic and Greek
 - 2. Persian and Aramaic
 - 3. Greek and Aramaic
 - 4. Greek and Prakrit

Question ID : 65497830666
Status : Answered
Chosen Option : 2

Q.24 Who among the following was the successor of Chandragupta I?

- Ans
- 1. Vikramaditya
 - 2. Samudragupta
 - 3. Chandragupta II
 - 4. Ghatotkacha

Question ID : 65497830652
Status : Answered
Chosen Option : 4

Q.25 Who authored the book 'Voices of Dissent' published in October 2020?

- Ans
- 1. Arjun Anand
 - 2. Arundhati Roy
 - 3. Sarbpreet Singh
 - 4. Romila Thapar

Question ID : 65497830665
Status : Not Attempted and Marked For Review
Chosen Option : --

Section : Part C Elementary Mathematics

Q.1 A can complete $\frac{2}{3}$ of a work in 10 days and B can complete $\frac{4}{5}$ of the same work in 8 days. They work together for 5 days. The remaining work is completed by C alone in 6 days. In how many days C alone can complete 75% of the same work?

- Ans
- 1. 27
 - 2. 36
 - 3. 18
 - 4. 30

Question ID : 65497830683
Status : Answered

Q.2 An electric heater was sold at a profit of 12%. If its cost had been 5% less and it had been sold for ₹180 less, the profit would have been 10%. What is the cost price of the electric heater?

- Ans**
- 1. ₹2,250
 - 2. ₹2,380
 - 3. ₹2,400
 - 4. ₹2,000

Question ID : 65497830675
Status : Answered
Chosen Option : 3

Q.3 The price of sugar rises by 33%. By what percent should a family reduce the consumption of sugar, so as NOT to increase the expenditure?

- Ans**
- 1. 30
 - 2. 24.8
 - 3. 29.8
 - 4. 33

Question ID : 65497830693
Status : Answered
Chosen Option : 2

Q.4 A cistern has a leak which would empty it in 6 hours. A tap is turned on which admits 10 litres of water per minute into the cistern. When it is full it now emptied in 10 hours. What is the capacity (in litres) of the cistern?

- Ans**
- 1. 8000
 - 2. 9000
 - 3. 8500
 - 4. 10000

Question ID : 65497830694
Status : Answered
Chosen Option : 2

Q.5 Two ropes, one 8 m long and the other 14 m long are to be cut into pieces of the same length. What will the maximum possible length of each piece be?

- Ans**
- 1. 1 m
 - 2. 4 m
 - 3. 2 m
 - 4. 6 m

Question ID : 65497830684
Status : Answered
Chosen Option : 4

Q.6 If the radius and the height of a circular cylinder are 10 cm and 15 cm, respectively, and the radius of a sphere is 5 cm, then what is the ratio of the curved surface area of the cylinder to that of the sphere?

- Ans**
- 1. 3 : 2
 - 2. 5 : 1
 - 3. 3 : 1
 - 4. 1 : 3

Question ID : 65497830680
 Status : Answered
 Chosen Option : 3

Q.7 The capacities of two hemispherical vessels are 2.7 litres and 12.5 litres. Find the ratio of the areas of the inner curved surfaces of the vessels.

- Ans**
- 1. 3 : 5
 - 2. 5 : 3
 - 3. 2 : 1
 - 4. 1 : 2

Question ID : 65497830699
 Status : Answered
 Chosen Option : 1

Q.8 The ratio of the number of girls and boys in a school is 8 : 7. If the percentage increase in the number of girls and boys is 10% and 20%, respectively, what will be the new ratio?

- Ans**
- 1. 14 : 19
 - 2. 22 : 21
 - 3. 20 : 23
 - 4. 13 : 11

Question ID : 65497830697
 Status : Answered
 Chosen Option : 2

Q.9 When 55 is subtracted from a number, it reduces to its 80%. Find four-fifth of the original number.

- Ans**
- 1. 240
 - 2. 220
 - 3. 210
 - 4. 180

Question ID : 65497830685
 Status : Answered
 Chosen Option : 2

Q.10 A shopkeeper bought 60 kg of rice at ₹42 per kg and mixed it with 120 kg rice at ₹52 per kg. At what rate (₹ per kg) should he sell the mixture to gain 20%?

- Ans**
- 1. ₹ 53.25
 - 2. ₹ 54.82
 - 3. ₹ 58.40
 - 4. ₹ 55.50

Question ID : 65497830696
 Status : Answered

Q.11 An article was sold for ₹8800 which is $\frac{5}{7}$ of its cost price. The loss per cent is:

- Ans**
- 1. $31\frac{6}{7}\%$
 - 2. $28\frac{4}{7}\%$
 - 3. $22\frac{5}{7}\%$
 - 4. $12\frac{3}{7}\%$

Question ID : 65497830682
Status : Answered
Chosen Option : 2

Q.12 Mukul lent ₹9,300 on simple interest in two parts. He earned interest at 5% per annum on the first part and at 8% per annum on the second part. The total interest he received after 4 years is ₹2,400. What is the ratio of the money lent at 5% to that lent at 8%?

- Ans**
- 1. 5 : 8
 - 2. 8 : 5
 - 3. 15 : 16
 - 4. 16 : 15

Question ID : 65497830676
Status : Answered
Chosen Option : 4

Q.13 If $x : y = 5 : 2$, then what is $(8x - 9y) : (14x - 13y)$?

- Ans**
- 1. 37 : 29
 - 2. 29 : 37
 - 3. 1 : 2
 - 4. 2 : 1

Question ID : 65497830679
Status : Answered
Chosen Option : 3

Q.14 If the difference between the simple interest and compound interest on a sum of money invested for 2 years at the rate of 15% per annum (interest compounded annually) is ₹225, then what is the sum?

- Ans**
- 1. ₹8,000
 - 2. ₹9,500
 - 3. ₹10,000
 - 4. ₹9,000

Question ID : 65497830689
Status : Answered
Chosen Option : 3

Q.15 A man covers a certain distance at a speed of 60 km/h and returns at a speed of 40 km/h. What is his average speed (in km/h) for the entire journey?

- Ans**
- 1. 48
 - 2. 40
 - 3. 12
 - 4. 50

Question ID : 65497830678
Status : Answered
Chosen Option : 1

Q.16 The ratio of the monthly incomes of Ramu and Somu is 6 : 5 and the ratio of their expenditures is 7 : 6. At the end of the month, Ramu and Somu save ₹1,500 and ₹1,000, respectively. What is Ramu's monthly income?

- Ans**
- 1. ₹24,000
 - 2. ₹18,000
 - 3. ₹14,000
 - 4. ₹12,000

Question ID : 65497830688
Status : Answered
Chosen Option : 4

Q.17 If the average of the numbers 5, 7, 9, 12, 13, t, 20 is t, then what is the value of t?

- Ans**
- 1. 10
 - 2. 11
 - 3. 15
 - 4. 18

Question ID : 65497830687
Status : Answered
Chosen Option : 2

Q.18 The value of $\frac{3}{4} \div \frac{3}{4}$ of $\frac{3}{4} \times \frac{4}{3} + \frac{5}{2} \div \frac{2}{5}$ of $\frac{5}{4} - \left(\frac{2}{3} - \frac{2}{3}\right)$ of $\frac{5}{6}$ is:

- Ans**
- 1. $\frac{10}{3}$
 - 2. $\frac{11}{3}$
 - 3. $\frac{20}{3}$
 - 4. $\frac{22}{3}$

Question ID : 65497830681
Status : Answered
Chosen Option : 3

Q.19 What will be single discount equivalent to three successive discounts of 50%, 30%, and 20%?

- Ans
- 1. 68%
 - 2. 72%
 - 3. 75%
 - 4. 70%

Question ID : 65497830691
 Status : Answered
 Chosen Option : 2

Q.20 The mean of 15 measurements was calculated to be 50 cm. But it was found that one of the measurements was recorded as 46 cm instead of 61 cm. What is the correct mean (in cm)?

- Ans
- 1. 53
 - 2. 52
 - 3. 55
 - 4. 51

Question ID : 65497830690
 Status : Answered
 Chosen Option : 4

Q.21 Simplify the following expression.

$$\frac{\frac{3}{4} \text{ of } 1\frac{3}{5} - 1 \times 5 + 2}{24 - 6 \times 2} \div 4$$

- Ans
- 1. $-\frac{3}{80}$
 - 2. $-\frac{1}{192}$
 - 3. $-\frac{29}{720}$
 - 4. $-\frac{29}{240}$

Question ID : 65497830677
 Status : Answered
 Chosen Option : 4

Q.22 If the difference between two numbers is 42 and their LCM and HCF are 1729 and 7, respectively, what is the sum of those two numbers?

- Ans
- 1. 390
 - 2. 244
 - 3. 420
 - 4. 224

Question ID : 65497830686
 Status : Answered
 Chosen Option : 4

Q.23 The interest on a certain deposit at 3.5% per annum will be ₹210 in one year. How much will the additional interest in one year be on the same deposit at 4% per annum?

- Ans** ✓ 1. ₹30
 ✗ 2. ₹49
 ✗ 3. ₹45
 ✗ 4. ₹36

Question ID : 65497830698
 Status : Answered
 Chosen Option : 3

Q.24 The list price of an article is ₹15,000. A trader wants to buy it. He has to choose one out of two discount series — one is 45%, 3%, and 2% and the other is 25%, 12% and 13% — on the list price. How many rupees can he save by choosing right series?

- Ans** ✓ 1. ₹770.55
 ✗ 2. ₹771.55
 ✗ 3. ₹773.55
 ✗ 4. ₹772.55

Question ID : 65497830692
 Status : Answered
 Chosen Option : 4

Q.25 A car starts at a speed of 80 km/h, with its speed increasing by 8 km/h every two hours. In how many hours will it cover 432 km?

- Ans** ✗ 1. 6 hours 30 minutes
 ✗ 2. 5 hours 30 minutes
 ✓ 3. 5 hours
 ✗ 4. 6 hours

Question ID : 65497830695
 Status : Answered
 Chosen Option : 1

Section : Part D English

Q.1 Select the INCORRECTLY spelt word.

- Ans** ✓ 1. Flavure
 ✗ 2. Figure
 ✗ 3. Leisure
 ✗ 4. Future

Question ID : 65497830703
 Status : Answered
 Chosen Option : 1

Q.2 Select the most appropriate ANTONYM of the given word.

Loathe

- Ans 1. Detest
 2. Admire
 3. Abhor
 4. Despise

Question ID : 65497830716
Status : Answered
Chosen Option : 2

Q.3 Select the most appropriate ANTONYM of the given word.

Beneath

- Ans 1. Below
 2. Above
 3. Beyond
 4. Under

Question ID : 65497830701
Status : Answered
Chosen Option : 2

Q.4 Select the most appropriate option that can substitute the underlined segment in the given sentence. If there is no need to substitute it, select 'No substitution required'.

Karan looked everywhere for the pen-drive but could not find it.

- Ans 1. but had not find it
 2. No substitution required
 3. but could not finding it
 4. but could not found it

Question ID : 65497830707
Status : Answered
Chosen Option : 2

Q.5 The following sentence has been divided into parts. One of them may contain an error. Select the part that contains the error from the given options. If you don't find any error, mark 'No error' as your answer.

Unless you don't / work hard, / you will fail.

- Ans 1. you will fail
 2. No error
 3. Unless you don't
 4. work hard

Question ID : 65497830700
Status : Answered
Chosen Option : 3

Q.6 Select the most appropriate meaning of the given idiom.

Blow a fuse

- Ans
- 1. To feel tired
 - 2. To feel sick
 - 3. To work hard aimlessly
 - 4. To react very angrily

Question ID : 65497830717
Status : Answered
Chosen Option : 4

Q.7 Select the option that can be used as a one-word substitute for the given group of words.

A person who is excessively conceited and self-absorbed

- Ans
- 1. Fraud
 - 2. Cheater
 - 3. Egotist
 - 4. Deceiver

Question ID : 65497830713
Status : Answered
Chosen Option : 3

Q.8 Select the most appropriate meaning of the given idiom.

The apple of one's eye

- Ans
- 1. Someone very rich
 - 2. A person who is very dear
 - 3. A jolly fellow
 - 4. A fierce opponent

Question ID : 65497830710
Status : Answered
Chosen Option : 2

Q.9 Select the most appropriate synonym of the given word.

Radical

- Ans
- 1. Superficial
 - 2. Minor
 - 3. Profound
 - 4. Conservative

Question ID : 65497830712
Status : Answered
Chosen Option : 2

Q.10 Select the most appropriate option to fill in the blank.

The new employee said that he was _____ of doing the job well.

- Ans
- 1. sufficient
 - 2. diffident
 - 3. confident
 - 4. efficient

Question ID : 65497830718
Status : Answered
Chosen Option : 4

Q.11 Select the most appropriate option that can substitute the underlined segment in the given sentence. If there is no need to substitute it, select 'No substitution required'.

Overexposure to the sun while sunbathing not only results in sunburns but also causes premature aging.

- Ans
- 1. No substitution required
 - 2. for sunbathing
 - 3. as sunbathing
 - 4. ever sunbathing

Question ID : 65497830719
Status : Answered
Chosen Option : 1

Q.12 Select the most appropriate option that can substitute the underlined word in the given sentence.

When you give away a secret or an advantage, you reveal a secret or suspension that you should have kept to yourself.

- Ans
- 1. information
 - 2. dereliction
 - 3. revolution
 - 4. benediction

Question ID : 65497830704
Status : Answered
Chosen Option : 1

Q.13 Select the INCORRECTLY spelt word.

- Ans
- 1. Dictate
 - 2. Dictionery
 - 3. Difference
 - 4. Decision

Question ID : 65497830714
Status : Answered
Chosen Option : 2

Q.14 The following sentence has been split into four segments. Identify the segment that contains a grammatical error.

Eighty rupees are / too much for / this leather bag, / which is looking so old.

- Ans
- 1. too much for
 - 2. this leather bag
 - 3. Eighty rupees are
 - 4. which is looking so old

Question ID : 65497830705
Status : Answered
Chosen Option : 3

Q.15 Select the most appropriate option to fill in the blank.

Editing involves _____ and correction with an intention to produce accurate work.

- Ans
- 1. habitation
 - 2. modification
 - 3. fortification
 - 4. modulation

Question ID : 65497830715
Status : Answered
Chosen Option : 2

Q.16 Select the option that can be used as a one-word substitute for the given group of words.

Comparison between things that have similar features

- Ans
- 1. Resemblance
 - 2. Contrast
 - 3. Analogy
 - 4. Description

Question ID : 65497830708
Status : Answered
Chosen Option : 2

Q.17 Select the most appropriate option to fill in the blank.

He applied for official _____ to organise the event.

- Ans
- 1. agreement
 - 2. provision
 - 3. authority
 - 4. permission

Question ID : 65497830709
Status : Answered
Chosen Option : 4

Q.18 Parts of the given sentence have been given as options. One of them contains a grammatical error. Select the option that has the error.

Her friends house is close to the high school where Sarathi teaches.

- Ans 1. the high school
 2. Her friends
 3. teaches
 4. close to

Question ID : 65497830711
 Status : Answered
 Chosen Option : 2

Q.19 Select the most appropriate synonym of the given word.

Competent

- Ans 1. Compat ble
 2. Capable
 3. Comfortable
 4. Comparable

Question ID : 65497830706
 Status : Answered
 Chosen Option : 1

Q.20 Select the option that can be used as a one-word substitute for the given group of words.

Words carved on a stone or monument

- Ans 1. Transcription
 2. Inscription
 3. Prescription
 4. Subscription

Question ID : 65497830702
 Status : Answered
 Chosen Option : 2

Comprehension:

In the following passage, some words have been deleted. Read the passage carefully and select the most appropriate option to fill in each blank.

It has always been (1)_____ dream to live (2)_____ Northbrook Villa. My cousins have been (3)_____ there since a long time. The place is (4)_____ ten kilometres away from my school. I hope father will agree (5)_____ shifting there.

SubQuestion No : 21

Q.21 Select the most appropriate option to fill in blank number 1.

- Ans 1. my
 2. me
 3. mine
 4. myself

Question ID : 65497830721
 Status : Answered
 Chosen Option : 1

Comprehension:

In the following passage, some words have been deleted. Read the passage carefully and select the most appropriate option to fill in each blank.

It has always been (1)_____ dream to live (2)_____ Northbrook Villa. My cousins have been (3)_____ there since a long time. The place is (4)_____ ten kilometres away from my school. I hope father will agree (5)_____ shifting there.

SubQuestion No : 22

Q.22 Select the most appropriate option to fill in blank number 2.

- Ans 1. among
 2. to
 3. in
 4. from

Question ID : 65497830722
 Status : Answered
 Chosen Option : 3

Comprehension:

In the following passage, some words have been deleted. Read the passage carefully and select the most appropriate option to fill in each blank.

It has always been (1)_____ dream to live (2)_____ Northbrook Villa. My cousins have been (3)_____ there since a long time. The place is (4)_____ ten kilometres away from my school. I hope father will agree (5)_____ shifting there.

SubQuestion No : 23

Q.23 Select the most appropriate option to fill in blank number 3.

- Ans 1. left
 2. live
 3. living
 4. lived

Question ID : 65497830723
 Status : Answered
 Chosen Option : 3

Comprehension:

In the following passage, some words have been deleted. Read the passage carefully and select the most appropriate option to fill in each blank.

It has always been (1)_____ dream to live (2)_____ Northbrook Villa. My cousins have been (3)_____ there since a long time. The place is (4)_____ ten kilometres away from my school. I hope father will agree (5)_____ shifting there.

SubQuestion No : 24

Q.24 Select the most appropriate option to fill in blank number 4.

- Ans 1. adjectively
 2. advertently
 3. approximately
 4. ambivalently

Question ID : 65497830724
 Status : Answered
 Chosen Option : 3

Comprehension:

In the following passage, some words have been deleted. Read the passage carefully and select the most appropriate option to fill in each blank.

It has always been (1)_____ dream to live (2)_____ Northbrook Villa. My cousins have been (3)_____ there since a long time. The place is (4)_____ ten kilometres away from my school. I hope father will agree (5)_____ shifting there.

SubQuestion No : 25

Q.25 Select the most appropriate option to fill in blank number 5.

- Ans 1. out
 2. to
 3. from
 4. at

Question ID : 65497830725
 Status : Answered
 Chosen Option : 4

Section : Part D Hindi

Q.1 दिए गए वाक्य का वह भाग ज्ञात करें जिसमें कोई त्रुटि है। यदि कोई त्रुटि नहीं है, तो 'कोई त्रुटि नहीं है' चुनें।

गले को (1)/ पराधीनता की (2) /बेड़ियाँ पड़ी रही हैं। (3)/ कोई त्रुटि नहीं है (4)

- Ans 1. 1
 2. 4
 3. 2
 4. 3

Question ID : 65497830726
 Status : Not Answered
 Chosen Option : --

Q.2 'एक काम से दोहरा लाभ प्राप्त करना' यह किस मुहावरे का अर्थ है?

- Ans 1. एक ढेले से दो चिड़िया मारना
 2. एक थैली के चट्टे-बट्टे होना
 3. एक पर एक होना
 4. एक तरकश के तीर होना

Question ID : 65497830729
 Status : Not Answered
 Chosen Option : --

Q.3 दिये गये वाक्य के किस भाग में त्रुटि है?

वह एक आवश्यकीय कार्य से बाहर गया है।

- Ans 1. आवश्यकीय कार्य
 2. से बाहर
 3. गया है।
 4. वह एक

Question ID : 65497830741
 Status : Not Answered
 Chosen Option : --

Q.4 तीन वर्षों में होनेवाली- रेखांकित वाक्यांश के लिए एक शब्द का चयन कीजिए-

- Ans 1. त्रैवार्षिक
 2. मासिक
 3. अर्धवार्षिक
 4. वार्षिक

Question ID : 65497830743
 Status : Not Answered
 Chosen Option : --

Q.5 दिए गए वाक्य का वह भाग ज्ञात करें जिसमें कोई त्रुटि है। यदि कोई त्रुटि नहीं है, तो 'कोई त्रुटि नहीं' विकल्प को चुनें।

झूठ बोलना उसका आदत बन गई है।

- Ans 1. उसका आदत
 2. कोई त्रुटि नहीं
 3. झूठ बोलना
 4. बन गई

Question ID : 65497830730
 Status : Not Answered
 Chosen Option : --

Q.6 रिक्त स्थान की पूर्ति के लिए सबसे उपयुक्त शब्द का चयन करें।

अब भारत में भी गगनचुम्बी _____ का निर्माण होने लगा है।

- Ans 1. भुवनो
 2. भावन
 3. भावों
 4. भवनो

Question ID : 65497830745
 Status : Not Answered
 Chosen Option : --

Q.7 दिए गए वाक्य में रेखांकित खंड को प्रतिस्थापित करने के लिए सबसे उपयुक्त विकल्प का चयन करें। यदि इसे प्रतिस्थापित करने की आवश्यकता नहीं है, तो विकल्प 'किसी बदलाव की आवश्यकता नहीं है' का चयन करें।

साहित्य और जीवन का घोर सबध है।

- Ans 1. आत्मीय सबध है।
 2. अनिष्ट सबध है।
 3. अभिन्न सबध है।
 4. किसी बदलाव की आवश्यकता नहीं है।

Question ID : 65497830739
 Status : Not Answered
 Chosen Option : --

Q.8 मुमुक्षु - रेखांकित शब्द के लिए वाक्यांश का चयन कीजिए-

- Ans 1. जो मोक्ष चाहता हो
 2. जो बहुत ही भूखा हो
 3. जो सुन्दर हो
 4. जो चक्रधारण करता है

Question ID : 65497830744
 Status : Not Answered
 Chosen Option : --

Q.9 सही वर्तनी वाले शब्द का चयन करें।

- Ans 1. क्रिपया
 2. कृप्या
 3. क्रिईप्य
 4. कृपया

Question ID : 65497830737
 Status : Not Answered
 Chosen Option : --

Q.10 'विद्युत' का पर्यायवाची है-

- Ans 1. तरिणी
 2. आपगा
 3. वनिता
 4. चपला

Question ID : 65497830742
 Status : Not Answered
 Chosen Option : --

Q.11 सही वर्तनी वाले शब्द का चयन करें।

- Ans 1. आस्तित्व
 2. अस्तीत्व
 3. अस्तित्व
 4. आस्तितावा

Question ID : 65497830738
 Status : Not Answered
 Chosen Option : --

Q.12 रिक्त स्थान की पूर्ति के लिए सबसे उपयुक्त शब्द का चयन करें-

सेवा _____ भाव से करनी चाहिए।

- Ans 1. आलस
 2. निःस्वार्थ
 3. स्वार्थ
 4. सजग

Question ID : 65497830735
 Status : Not Answered
 Chosen Option : --

Q.13 दिए गए वाक्य में रेखांकित खंड को प्रतिस्थापित करने के लिए सबसे उपयुक्त विकल्प का चयन करें।
यदि इसे प्रतिस्थापित करने की आवश्यकता नहीं है, तो विकल्प 'किसी बदलाव की आवश्यकता नहीं है'
का चयन करें।

उसकी अदूरदर्शिता के कारण परिवार पर लाखों के कर्ज़ हो गया।

- Ans
- 1. परिवारो पर लाखों के कर्ज़ हो गया ।
 - 2. परिवार पर लाखों के कर्ज़ हो गये ।
 - 3. किसी बदलाव की आवश्यकता नहीं है।
 - 4. परिवार पर लाखों का कर्ज़ हो गया ।

Question ID : 65497830734

Status : Not Answered

Chosen Option : --

Q.14 रिक्त स्थान की पूर्ति के लिए सबसे उपयुक्त शब्द का चयन करें।

उसने अपने विवाह के _____ में पार्टी दी।

- Ans
- 1. उपलक्ष्य
 - 2. समय
 - 3. लिए
 - 4. अवसर

Question ID : 65497830736

Status : Not Answered

Chosen Option : --

Q.15 दिए गए शब्द के समानार्थी शब्द का चयन कीजिए।

शिकारी

- Ans
- 1. आखेटक
 - 2. आखेट
 - 3. अहेर
 - 4. मृगया

Question ID : 65497830727

Status : Not Answered

Chosen Option : --

Q.16 कौनसा विलोम-युग्म सुमेलित नहीं है?

- Ans
- 1. भूगोल-खगोल
 - 2. अनुराग-विराग
 - 3. जय-पराजय
 - 4. शुभ-अनिष्ट

Question ID : 65497830728

Status : Not Answered

Chosen Option : --

Q.17 दिए गये वाक्यांश के लिए एक शब्द दीजिये-

जो सब काम अपने भरोसे करता हो

- Ans
- 1. पराधीन
 - 2. स्वतंत्र
 - 3. परावलंबी
 - 4. स्वावलंबी

Question ID : 65497830733
Status : Not Answered
Chosen Option : --

Q.18 उस विकल्प का चयन कीजिए, जो निम्न मुहावरे का सही अर्थ व्यक्त करता है।

हुक्का-पानी बद करना

- Ans
- 1. हुक्का पीना
 - 2. डर जाना
 - 3. चकित करना
 - 4. जाति से निकालना

Question ID : 65497830740
Status : Not Answered
Chosen Option : --

Q.19 निम्न वाक्यांश के लिए उचित शब्द का चयन कीजिए।

भक्तों पर कृपा और प्रेम रखनेवाला

- Ans
- 1. भक्त
 - 2. राष्ट्रप्रेमी
 - 3. भक्त वत्सल
 - 4. प्रार्थी

Question ID : 65497830732
Status : Not Answered
Chosen Option : --

Q.20 दिए गए शब्द का विलोम चुनिए।

ऐहिक

- Ans
- 1. नैसर्गिक
 - 2. सात्विक
 - 3. पारलौकिक
 - 4. अलौकिक

Question ID : 65497830731
Status : Not Answered
Chosen Option : --

Comprehension:

दिए गए गद्यांश में से कुछ शब्द हटा दिए गए हैं। इसपर आधारित प्रश्नों में प्रत्येक सख्या के लिए सबसे उपयुक्त विकल्प का चयन करें।

सड़कें (1) _____ हैं। गदा पानी गली-गली में (2) _____। बराबर (3) _____ दी जा रही है कि शहर को (4) _____ रखें। फटी, खुली चीजें मत खाओ। पर (5) _____ सुनता है?

SubQuestion No : 21

Q.21 गद्यांश के रिक्त स्थान (1) के लिए सर्वाधिक उपयुक्त शब्द होगा-

- Ans** 1. गदी
 2. चौड़ा
 3. साफ
 4. सुथरे

Question ID : 65497830747

Status : Not Answered

Chosen Option : --

Comprehension:

दिए गए गद्यांश में से कुछ शब्द हटा दिए गए हैं। इसपर आधारित प्रश्नों में प्रत्येक सख्या के लिए सबसे उपयुक्त विकल्प का चयन करें।

सड़कें (1) _____ हैं। गदा पानी गली-गली में (2) _____। बराबर (3) _____ दी जा रही है कि शहर को (4) _____ रखें। फटी, खुली चीजें मत खाओ। पर (5) _____ सुनता है?

SubQuestion No : 22

Q.22 गद्यांश के रिक्त स्थान (2) के लिए सर्वाधिक उपयुक्त शब्द होगा-

- Ans** 1. मच गयी है
 2. बह रही है
 3. गिर रहे हैं
 4. फैल रहा है

Question ID : 65497830748

Status : Not Answered

Chosen Option : --

Comprehension:

दिए गए गद्यांश में से कुछ शब्द हटा दिए गए हैं। इसपर आधारित प्रश्नों में प्रत्येक सख्या के लिए सबसे उपयुक्त विकल्प का चयन करें।

सड़कें (1) _____ हैं। गदा पानी गली-गली में (2) _____। बराबर (3) _____ दी जा रही है कि शहर को (4) _____ रखें। फटी, खुली चीजें मत खाओ। पर (5) _____ सुनता है?

SubQuestion No : 23

Q.23 गद्यांश के रिक्त स्थान (3) के लिए सर्वाधिक उपयुक्त शब्द होगा-

- Ans** 1. औषधी
 2. खबर
 3. सतर्क
 4. चेतावनी

Question ID : 65497830749

Status : Not Answered

Chosen Option : --

Comprehension:

दिए गए गद्यांश में से कुछ शब्द हटा दिए गए हैं। इसपर आधारित प्रश्नों में प्रत्येक सख्या के लिए सबसे उपयुक्त विकल्प का चयन करें।

सड़कें (1) _____ हैं। गदा पानी गली-गली में (2) _____। बराबर (3) _____ दी जा रही है कि शहर को (4) _____ रखें। फटी, खुली चीजें मत खाओ। पर (5) _____ सुनता है?

SubQuestion No : 24

Q.24 गद्यांश के रिक्त स्थान (4) के लिए सर्वाधिक उपयुक्त शब्द होगा-

- Ans 1. साफ-सुथरा
 2. कूड़ा
 3. गदगी
 4. मैला

Question ID : 65497830750
 Status : Not Answered
 Chosen Option : --

Comprehension:

दिए गए गद्यांश में से कुछ शब्द हटा दिए गए हैं। इसपर आधारित प्रश्नों में प्रत्येक सख्या के लिए सबसे उपयुक्त विकल्प का चयन करें।

सड़कें (1) _____ हैं। गदा पानी गली-गली में (2) _____। बराबर (3) _____ दी जा रही है कि शहर को (4) _____ रखें। फटी, खुली चीजें मत खाओ। पर (5) _____ सुनता है?

SubQuestion No : 25

Q.25 गद्यांश के रिक्त स्थान (5) के लिए सर्वाधिक उपयुक्त शब्द होगा-

- Ans 1. यह
 2. किसने
 3. कौन
 4. वह

Question ID : 65497830751
 Status : Not Answered
 Chosen Option : --

Exam Date	18/11/2021
Exam Time :	9:00 AM - 10:30 AM
Subject	Constable GD 2021

Section : Part A General Intelligence and Reasoning

Q.1 Select the number from among the given options that can replace the question mark (?) in the following series.

38, 42, 58, 94, ?, 258

Ans 1. 164

2. 108

3. 152

4. 158

Question ID : 65497833684

Status : Answered

Chosen Option : 4

Q.2 उस विकल्प का चयन करें जो तीसरे अक्षर-समूह से उसी प्रकार संबंधित है, जिस प्रकार दूसरा अक्षर-समूह पहले अक्षर-समूह से संबंधित है।

DHM : GCX :: KOT : ?

Ans 1. NJE

2. NHD

3. NIE

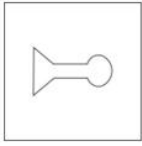
4. NKL

Question ID : 65497833686

Status : Answered

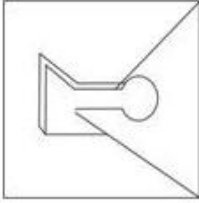
Chosen Option : 1

Q.3 उस विकल्प का चयन करें जिसमें दी गई आकृति अंतर्निहित है (घुमाने की अनुमति नहीं है)।

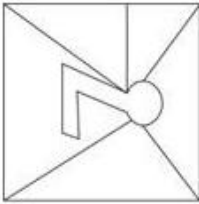


Ans


✗ 1.



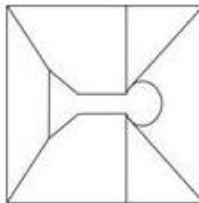
✗ 2.



✗ 3.



✓ 4.



Question ID : 65497833677

Status : Answered

Chosen Option : 4

Q.4 उन अक्षरों के संयोजन का चयन करें जिसे दी गई श्रृंखला के रिक्त स्थान में क्रमिक रूप से रखे जाने पर श्रृंखला पूर्ण होगी।

P E _ _ L E P _ _ P L E _ _ O P _ _

Ans ✗ 1. OPEOPLEE

✗ 2. OPOEPELE

✓ 3. OPEOPELE

✗ 4. OPOEEPLE

Question ID : 65497833690

Status : Answered

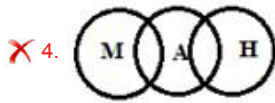
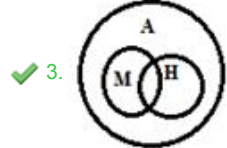
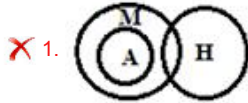
Chosen Option : 3

Q.5 Select the Venn diagram that best represents the relationship between the following classes.

Human, Male, Animal

(H: Human; M: Male; A: Animal)

Ans



Question ID : 65497833681

Status : Answered

Chosen Option : 1

Q.6 दिए गए विकल्पों में से उस अक्षर-समूह का चयन कीजिए जो निम्न श्रृंखला में प्रश्नवाचक चिह्न (?) के स्थान पर आ सकता है।

YEM, BHP, EKS, HNV, ?

Ans ✓ 1. KQY

✗ 2. KRX

✗ 3. LNU

✗ 4. KPZ

Question ID : 65497833678

Status : Answered

Chosen Option : 1

Q.7 Read the given statements and conclusions carefully. Assuming that the information given in the statements is true, even if it appears to be at variance with commonly known facts, decide which of the given conclusions logically follow(s) from the statements.

Statements:

All kites are planes.

All planes are papers.

Conclusions:

I. All kites are papers.

II. No paper is a plane.

Ans ✗ 1. Neither conclusion I nor II follows

✗ 2. Both conclusions I and II follow

✗ 3. Only conclusion II follows

✓ 4. Only conclusion I follows

Question ID : 65497833694

Status : Answered

Chosen Option : 4

Q.8 Six friends, A, B, C, D, E and F, are sitting opposite to each other in a circle, facing towards the centre. C and D are adjacent to each other. Also, B and F are adjacent to each other. E is sitting opposite to B. F is sitting to the left of B. Who is sitting between E and F?

- Ans 1. A
 2. F
 3. E
 4. B

Question ID : 65497833680
 Status : Answered
 Chosen Option : 1

Q.9 'cloth' is related to 'Cotton' in the same way as 'Flour' is related to '_____':

- Ans 1. Food
 2. Chapatti
 3. Wheat
 4. Tiles

Question ID : 65497833679
 Status : Answered
 Chosen Option : 3

Q.10 In a certain code language, REMAIN is coded as 92214261813. How will MACHINE be coded in that language?

- Ans 1. 131389145
 2. 14262419181322
 3. 22131819242614
 4. 514981313

Question ID : 65497833683
 Status : Answered
 Chosen Option : 2

Q.11 If, $5 + 7 = 473 + 8 = 359 + 2 = 29$ then, $7 + 4 = ?$

- Ans 1. 42
 2. 45
 3. 37
 4. 39

Question ID : 65497833696
 Status : Not Answered
 Chosen Option : --

Q.12 Study the given pattern carefully and select the number that can replace the question mark (?) in it.

7 343 3
5 ? 4
2 256 8

- Ans 1. 225
 2. 250
 3. 525
 4. 625

Question ID : 65497833695
Status : Answered
Chosen Option : 4

Q.13 उस विकल्प का चयन करें जो तीसरी संख्या से उसी प्रकार संबंधित है जिस प्रकार दूसरी संख्या पहली संख्या से संबंधित है।

7 : 56 :: 13 : ?

- Ans 1. 92
 2. 78
 3. 67
 4. 104

Question ID : 65497833674
Status : Answered
Chosen Option : 4

Q.14 Six friends, Ravi, Kavya, Mahima, Gita, Mohan and Neha, are sitting in a straight line, all facing the north. Kavya is not sitting at either of the ends. Neha is sitting between Ravi and Mohan. Mohan is sitting to the immediate right of Gita. There are three friends sitting between Ravi and Kavya. Kavya is sitting to the immediate right of Mahima. Who is sitting at the fifth position from the left end?

- Ans 1. Gita
 2. Neha
 3. Kavya
 4. Mohan

Question ID : 65497833673
Status : Answered
Chosen Option : 3

Q.15 Which two numbers (NOT digits) should be interchanged to make the given equation correct?

$$5 \times 40 \div 8 + 3 - 14 = 53$$

- Ans 1. 8 and 14
 2. 5 and 3
 3. 5 and 8
 4. 8 and 3

Question ID : 65497833675
Status : Answered
Chosen Option : 3

Q.16 Select the correct option that indicates the arrangement of the given words in the order in which they appear in an English dictionary.

1. Goffer
2. Goblin
3. Goatling
4. Goatish
5. Goer

- Ans
- 1. 4, 2, 3, 5, 1
 - 2. 4, 3, 2, 5, 1
 - 3. 4, 3, 5, 2, 1
 - 4. 4, 2, 5, 3, 1

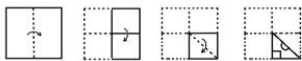
Question ID : 65497833689
 Status : Answered
 Chosen Option : 2

Q.17 In a certain code language, 'LECTURE' is written as 'MGFXZXL' and 'TEACHER' is written as 'UGDGMKY'. How will 'STUDENT' be written in that language?

- Ans
- 1. TVXJHTA
 - 2. TVWHJTA
 - 3. TVXHJTA
 - 4. TVVJHTA

Question ID : 65497833687
 Status : Answered
 Chosen Option : 3

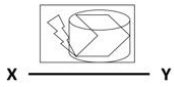
Q.18 The sequence of folding a piece of paper and the manner in which the folded paper has been cut is shown in the following figures. How would this paper look when unfolded?



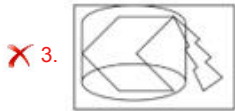
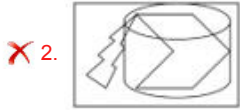
- Ans
- 1.
 - 2.
 - 3.
 - 4.

Question ID : 65497833697
 Status : Answered
 Chosen Option : 3

Q.19 दिए गए संयोजन के सही दर्पण प्रतिबिंब का चयन करें, जब दर्पण को दिखाए गए अनुसार XY पर रखा गया है।



Ans



Question ID : 65497833685

Status : Answered

Chosen Option : 2

Q.20 चार अक्षर-समूह दिए गए हैं जिनमें से तीन किसी तरीके से समान हैं और एक भिन्न है। भिन्न अक्षर-समूह को चुनिए।

Ans ✓ 1. NTD

✗ 2. RTI

✗ 3. QSJ

✗ 4. EGV

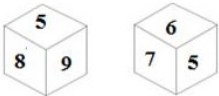
Question ID : 65497833682

Status : Answered

Chosen Option : 1

Q.21 Two different positions of the same dice marked with the numbers 4, 5, 6, 7, 8 and 9 are shown.

Select the number that will be on the face opposite to the face having the number '9'.



Ans ✗ 1. 8

✗ 2. 6

✓ 3. 7

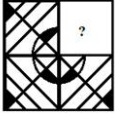
✗ 4. 4

Question ID : 65497833676

Status : Answered

Chosen Option : 3

Q.22 विकल्पों से वह चित्र चुनें जिसे प्रश्न चिह्न (?) के स्थान पर रखा जा सकता है और दिए गए पैटर्न को पूरा किया जा सकता है (धुमने की अनुमति नहीं है)।



Ans

✓ 1.



✗ 2.



✗ 3.



✗ 4.



Question ID : 65497833692

Status : Answered

Chosen Option : 4

Q.23 In a certain code language, 'BOOK' is written as 'CRTR'. How will 'PETROL' be written in that language?

Ans

✗ 1. QIXYYW

✓ 2. QHYXW

✗ 3. HYXXW

✗ 4. QHXYYW

Question ID : 65497833693

Status : Answered

Chosen Option : 2

Q.24 दिए गए विकल्पों में से वह संख्या चुनें जिसे नीचे दी गई श्रृंखला में प्रश्न चिह्न (?) के स्थान पर रखा जा सकता है।

9, 14, 34, 114, ?, 1714

Ans

✗ 1. 524

✗ 2. 914

✗ 3. 654

✓ 4. 434

Question ID : 65497833691

Status : Answered

Chosen Option : 4

Q.25 L is the mother of M. L has only two children. N is the sister of M. N is the daughter of K. Z is the grandson of K. O is the mother of Z. How is O related to N?

- Ans
- 1. Sister
 - 2. Mother
 - 3. Wife
 - 4. Sister-in-law

Question ID : 65497833688
Status : Answered
Chosen Option : 4

Section : Part B General Knowledge and General Awareness

Q.1 The Right to Information Act is a good example of a law and it has more chances of working because:

- Ans
- 1. it eases penalties on frauds
 - 2. it acts as an enemy of democracy
 - 3. it supplements laws that encourage corruption
 - 4. it empowers people to find out what is happening in the government

Question ID : 65497833714
Status : Answered
Chosen Option : 4

Q.2 In which of the following states is Saryu river located?

- Ans
- 1. West Bengal
 - 2. Himachal Pradesh
 - 3. Uttarakhand
 - 4. Chhattisgarh

Question ID : 65497833704
Status : Answered
Chosen Option : 3

Q.3 Different crops grown in alternate rows is an example of:

- Ans
- 1. intercropping
 - 2. contour cropping
 - 3. combined cropping
 - 4. mixed cropping

Question ID : 65497833711
Status : Answered
Chosen Option : 4

Q.4 What was the rank of India in the final medals tally of Commonwealth Games 2018?

- Ans
- 1. Third
 - 2. Fourth
 - 3. Fifth
 - 4. Second

Question ID : 65497833715
Status : Not Answered
Chosen Option : --

Q.5 Ballabgarh became an important trading centre under the leadership of the Jat ruler

- Ans
- 1. Raja Ram
 - 2. Suraj Mal
 - 3. Randhir Singh
 - 4. Badan Singh

Question ID : **65497833713**
Status : **Not Answered**
Chosen Option : --

Q.6 Which of the following is NOT an abiotic component of the eco system?

- Ans
- 1. Temperature
 - 2. Living organisms
 - 3. Minerals
 - 4. Wind

Question ID : **65497833717**
Status : **Answered**
Chosen Option : 2

Q.7 In which of the following countries was paper invented approximately 1900 years ago?

- Ans
- 1. Japan
 - 2. China
 - 3. Nepal
 - 4. India

Question ID : **65497833718**
Status : **Answered**
Chosen Option : 2

Q.8 In which of the following places is the Vulture Conservation and Breeding Centre located?

- Ans
- 1. Pushkar
 - 2. Pinjore
 - 3. Rampur
 - 4. Agra

Question ID : **65497833701**
Status : **Answered**
Chosen Option : 3

Q.9 Where is the active volcano found in India?

- Ans
- 1. Lakshadweep
 - 2. Andaman and Nicobar
 - 3. Goa
 - 4. Puducherry

Question ID : **65497833708**
Status : **Answered**
Chosen Option : 2

Q.10 Which of the following is non-justiciable in nature in Indian Constitution?

- Ans
- 1. Equality of law and equal protection of law
 - 2. Protection with respect to conviction of offences
 - 3. Equal justice and free legal aid
 - 4. Freedom to manage religious affairs

Question ID : 65497833705
Status : Answered
Chosen Option : 3

Q.11 In which state was the special awareness campaign for women 'Mission Shakti' launched in October 2020?

- Ans
- 1. Bihar
 - 2. Madhya Pradesh
 - 3. Uttar Pradesh
 - 4. Punjab

Question ID : 65497833706
Status : Answered
Chosen Option : 3

Q.12 Who was the Governor General of British India when the annexation of Punjab was carried out by the Britishers?

- Ans
- 1. Lord Canning
 - 2. Lord Dalhousie
 - 3. Lord Harding
 - 4. Lord Ellenborough

Question ID : 65497833722
Status : Answered
Chosen Option : 2

Q.13 The Kelkar Committee 2015 is related to the _____.

- Ans
- 1. calculation of GDP
 - 2. fixation of poverty line
 - 3. merger of banks
 - 4. PPP model of infrastructure development

Question ID : 65497833699
Status : Answered
Chosen Option : 4

Q.14 According to the Public Affairs Index 2020, which among the following has been adjudged the best governed union territory in the category of UTs?

- Ans
- 1. Puducherry
 - 2. Chandigarh
 - 3. Ladakh
 - 4. Jammu and Kashmir

Question ID : 65497833716
Status : Answered
Chosen Option : 2

Q.15 Who among the following was adjudged as the 'Most Valuable Player of the Tournament' at the Indian Premier League 2020?

- Ans
- 1. Jasprit Bumrah
 - 2. Kagiso Rabada
 - 3. KL Rahul
 - 4. Jofra Archer

Question ID : 65497833703
Status : Answered
Chosen Option : 2

Q.16 In which year did the first Bengali woman writer Ashapoorna Devi win the Jnanpith Award?

- Ans
- 1. 1974
 - 2. 1976
 - 3. 1975
 - 4. 1973

Question ID : 65497833709
Status : Answered
Chosen Option : 2

Q.17 Which private bank launched a remote payment service named 'SMS Pay' for merchants on 26 November 2020?

- Ans
- 1. Axis Bank
 - 2. ICICI Bank
 - 3. Yes Bank
 - 4. HDFC Bank

Question ID : 65497833721
Status : Answered
Chosen Option : 2

Q.18 To which nation does swimmer Gaurika Singh, who was the youngest athlete in Rio Olympics 2016, belong to?

- Ans
- 1. Pakistan
 - 2. Nepal
 - 3. Bangladesh
 - 4. India

Question ID : 65497833710
Status : Answered
Chosen Option : 4

Q.19 Which of the following countries is the second largest cotton producer in the world as of October 2020?

- Ans
- 1. T bet
 - 2. Bangladesh
 - 3. India
 - 4. China

Question ID : 65497833719
Status : Answered
Chosen Option : 4

Q.20 Who among the following was the recipient of the 29th Vyas Samman?

- Ans 1. Leeladhar Jagoori
 2. Nasera Sharma
 3. Surendra Verma
 4. Mamta Kalia

Question ID : 65497833702
Status : Answered
Chosen Option : 1

Q.21 Salla dance form is performed in the state of _____.

- Ans 1. Jharkhand
 2. Uttar Pradesh
 3. Chhattisgarh
 4. Uttarakhand

Question ID : 65497833707
Status : Answered
Chosen Option : 1

Q.22 _____ is secreted by the pineal gland.

- Ans 1. Melatonin
 2. Progesterone
 3. Epinephrine
 4. Insulin

Question ID : 65497833700
Status : Answered
Chosen Option : 1

Q.23 Which of the following temples is located in Sri Lanka?

- Ans 1. Munneswaram
 2. Preah Vihear
 3. Katas Raj
 4. Pashupatinath

Question ID : 65497833698
Status : Not Answered
Chosen Option : --

Q.24 Muhammad Tughluq used 'token' currency to pay his soldiers, which was made out of:

- Ans 1. silver
 2. precious gold
 3. bronze
 4. cheap metals

Question ID : 65497833712
Status : Answered
Chosen Option : 2

Q.25 Reserve Bank of India put which bank under moratorium in November 2020?

- Ans**
- 1. State Bank of India
 - 2. Lakshmi Vilas Bank
 - 3. Bank of India
 - 4. Bank of Baroda

Question ID : 65497833720
Status : Answered
Chosen Option : 2

Section : Part C Elementary Mathematics

Q.1 Two positive numbers are in the ratio of 7 : 4. If the difference between their squares is 297, then the sum of the two numbers is:

- Ans**
- 1. 35
 - 2. 33
 - 3. 32
 - 4. 42

Question ID : 65497833727
Status : Answered
Chosen Option : 2

Q.2 A fruit seller had some apples. He sold 40% apples and still had 540 apples. The number of apples he had originally was:

- Ans**
- 1. 600
 - 2. 800
 - 3. 740
 - 4. 900

Question ID : 65497833733
Status : Answered
Chosen Option : 4

Q.3 Excluding stoppages, the speed of a bus is 60 km/h and including stoppages, it is 42 km/h. For how many minutes does the bus stop per hour?

- Ans**
- 1. 12
 - 2. 18
 - 3. 9
 - 4. 10

Question ID : 65497833735
Status : Answered
Chosen Option : 2

Q.4 In a sale, perfumes are available at a discount of 25% on the selling price. If a perfume costs ₹6,873 in the sale, what is the original selling price of the perfume?

- Ans**
- 1. ₹9,146
 - 2. ₹9,066
 - 3. ₹9,064
 - 4. ₹9,164

Question ID : 65497833732
Status : Not Answered
Chosen Option : --

Q.5 What is the compound interest (in ₹, nearest to a ₹) on a sum of ₹8,000 for $2\frac{1}{8}$ years at the rate of 16% p.a., interest compounded yearly?

- Ans**
- 1. 2,840
 - 2. 2,790
 - 3. 2,765
 - 4. 2,980

Question ID : 65497833745
Status : Not Answered
Chosen Option : --

Q.6 The monthly salaries of an officer and a clerk are in the ratio 11 : 4. If the monthly salary of the officer increases by ₹7,000 and that of the clerk by ₹3,000, then the ratio becomes 19 : 7. What was the initial salary (in ₹) of the officer?

- Ans**
- 1. 88,000
 - 2. 1,52,000
 - 3. 56,000
 - 4. 32,000

Question ID : 65497833725
Status : Answered
Chosen Option : 1

Q.7 One year ago, the ratio of the ages of A and B was 4 : 3. The ratio of their ages, after 7 years from now, will be 9 : 7. What is the present age (in years) of B?

- Ans**
- 1. 49
 - 2. 52
 - 3. 51
 - 4. 48

Question ID : 65497833744
Status : Answered
Chosen Option : 4

Q.8 The HCF of 3073, 1756 and 4829 is x . The product of the digits of x is:

- Ans
- 1. 96
 - 2. 72
 - 3. 81
 - 4. 108

Question ID : 65497833742
Status : Not Answered
Chosen Option : --

Q.9 Find the compound interest, if ₹3,000 was invested for 3 years at 20% p.a., interest compounded half yearly (nearest to a rupee).

- Ans
- 1. ₹2,010
 - 2. ₹2,301
 - 3. ₹2,110
 - 4. ₹2,315

Question ID : 65497833730
Status : Not Answered
Chosen Option : --

Q.10 Aman spends 74% of his income. If his expenditure increases by 30% and savings increase by 25%, then by what percentage will his income increase?

- Ans
- 1. 28.7%
 - 2. 26.8%
 - 3. 27.8%
 - 4. 27.2%

Question ID : 65497833743
Status : Answered
Chosen Option : 1

Q.11 The area (in m^2) of a triangular field, whose sides are 85 m, 85 m and 154 m, is:

- Ans
- 1. 2768
 - 2. 2872
 - 3. 2772
 - 4. 2868

Question ID : 65497833746
Status : Not Answered
Chosen Option : --

Q.12 15 boys can complete a work in 10 days and 12 girls can complete the same work in 15 days. If all 15 boys and 12 girls work together, in how many days, will the work get completed?

- Ans**
- 1. 6
 - 2. 8
 - 3. 4
 - 4. 5

Question ID : 65497833739
Status : Answered
Chosen Option : 1

Q.13 By selling a guitar for ₹846, Rakhi loses 6%. For how much should Rima sell it to gain 8%?

- Ans**
- 1. ₹912
 - 2. ₹992
 - 3. ₹972
 - 4. ₹922

Question ID : 65497833729
Status : Answered
Chosen Option : 3

Q.14 If the volume of a cube is $192\sqrt{3}$ cubic cm, then the length of its diagonal is:

- Ans**
- 1. 16 cm
 - 2. 14 cm
 - 3. 13 cm
 - 4. 12 cm

Question ID : 65497833728
Status : Answered
Chosen Option : 4

Q.15 $\left(\frac{1}{4} \times \frac{3}{4} \div 1\frac{1}{4} \text{ of } \frac{2}{5}\right) \div \left(\frac{3}{4} \div 1\frac{2}{3} \text{ of } \frac{4}{5}\right) - \left(\frac{1}{2} - \frac{1}{2} \times \frac{1}{4}\right)$ का मान कितना होगा?

- Ans**
- 1. $\frac{7}{24}$
 - 2. $\frac{2}{3}$
 - 3. $\frac{5}{12}$
 - 4. $\frac{11}{12}$

Question ID : 65497833740
Status : Answered
Chosen Option : 1

Q.16 The average of six numbers A, B, C, D, E and F is 58. If the first number A is two-fifth of the sum of B and C, and is also equal to three-fourth of the sum of D, E and F, then what is the value of the sum of B and C?

- Ans**
- 1. 180
 - 2. 360
 - 3. 116
 - 4. 240

Question ID : 65497833724
Status : Not Answered
Chosen Option : --

Q.17 Which is the greatest number of seven digits, which when divided by 10, 15, 20, 24 and 30, leaves the remainders 6, 11, 16, 20 and 26, respectively?

- Ans**
- 1. 9999960
 - 2. 9999956
 - 3. 9999980
 - 4. 9999976

Question ID : 65497833723
Status : Answered
Chosen Option : 2

Q.18 A can complete a work in 10 days and B can complete it in 15 days. If they work on it together for 5 days, then the fraction of the work left will be:

- Ans**
- 1. $\frac{1}{6}$
 - 2. $\frac{1}{2}$
 - 3. $\frac{1}{3}$
 - 4. $\frac{1}{8}$

Question ID : 65497833734
Status : Answered
Chosen Option : 1

Q.19 One-third of the goods are sold at 15% profit, 25% of the goods are sold at 20% profit, and the rest of the goods are sold at 10% loss. If a profit of ₹350 is earned in the entire transaction, then the original value of the goods (in ₹) is:

- Ans**
- 1. 5,400
 - 2. 7,200
 - 3. 9,000
 - 4. 6,000

Question ID : 65497833747
Status : Not Answered
Chosen Option : --

Q.20 $12 - [3 + \{4 \text{ of } 2 \div 8 - (8 - 6 \div 3)\}]$ का मान ज्ञात कीजिए।

- Ans
- 1. 20
 - 2. 12
 - 3. 14
 - 4. 10

Question ID : 65497833737
Status : Answered
Chosen Option : 3

Q.21 A man incurred 8% loss by selling a TV for ₹18,400. At what price should the TV be sold to earn 5% profit?

- Ans
- 1. ₹ 22,500
 - 2. ₹ 24,000
 - 3. ₹ 21,725
 - 4. ₹ 21,000

Question ID : 65497833738
Status : Answered
Chosen Option : 4

Q.22 The distance between two stations A and B is 700 km. A train covers the journey from A to B at a speed of 80 km/h and returns back to A with a uniform speed of 65 km/h. The average speed of train during the whole journey, is closest to:

- Ans
- 1. 74 km/h
 - 2. 71.72 km/h
 - 3. 72.7 km/h
 - 4. 70.73 km/h

Question ID : 65497833731
Status : Answered
Chosen Option : 2

Q.23 A single discount equivalent to three successive discounts i.e. 7%, 12% and 5%, is:

- Ans
- 1. 23%
 - 2. 27.3%
 - 3. 22.252%
 - 4. 22%

Question ID : 65497833736
Status : Answered
Chosen Option : 1

Q.24 A certain sum amounts to ₹12,740 in 4 years and to ₹15,925 in $7\frac{1}{2}$ years at the same rate percentage per annum at simple interest. The sum (in ₹) and the rate percentage per annum, respectively, are:

- Ans**
- 1. ₹7,800; 10%
 - 2. ₹9,100; 10%
 - 3. ₹7,800; 7.5%
 - 4. ₹9,100; 7.5%

Question ID : 65497833726
Status : Not Answered
Chosen Option : --

Q.25 A 253 m long train running at a speed of 60 km/h takes 42 seconds to cross a bridge. The length (in m) of the bridge is:

- Ans**
- 1. 447
 - 2. 435
 - 3. 443
 - 4. 427

Question ID : 65497833741
Status : Answered
Chosen Option : 1

Section : Part D English

Q.1 Select the most appropriate synonym of the given word.

Enjoyable

- Ans**
- 1. Bright
 - 2. Cloudy
 - 3. Delightful
 - 4. Beautiful

Question ID : 65497833754
Status : Not Answered
Chosen Option : --

Q.2 Select the most appropriate synonym of the given word.

DEFER

- Ans**
- 1. Conflict
 - 2. Postpone
 - 3. Balance
 - 4. Match

Question ID : 65497833765
Status : Not Answered
Chosen Option : --

Q.3 Select the option that can be used as a one-word substitute for the given group of words.

Certain to happen

- Ans 1. Necessary
 2. Predicted
 3. Inevitable
 4. Avoidable

Question ID : 65497833761
Status : Not Answered
Chosen Option : --

Q.4 Select the most appropriate ANTONYM of the given word.

Reign

- Ans 1. Manage
 2. Yield
 3. Govern
 4. Influence

Question ID : 65497833755
Status : Not Answered
Chosen Option : --

Q.5 Select the most appropriate option that can substitute the underlined segment in the given sentence. If there is no need to substitute it, select 'No substitution required'.

Don't disturb me while I talk to someone on the phone.

- Ans 1. talked
 2. am ta king
 3. was talking
 4. No substitution required

Question ID : 65497833748
Status : Not Answered
Chosen Option : --

Q.6 Select the most appropriate option to fill in the blank.

This antique sculpture is indeed _____.

- Ans 1. endless
 2. priceless
 3. helpless
 4. harmless

Question ID : 65497833767
Status : Not Answered
Chosen Option : --

Q.7 Select the option that can be used as a one-word substitute for the given group of words.

Eskimo's house that is made of ice blocks

- Ans 1. Igloo
 2. Burrow
 3. Den
 4. Cave

Question ID : 65497833749
Status : Not Answered
Chosen Option : --

Q.8 The following sentence has been split into four segments. Identify the segment that contains a grammatical error.

Who do you think / who stole / the painting / from the museum?

- Ans 1. Who do you think
 2. the painting
 3. from the museum
 4. who stole

Question ID : 65497833759
Status : Not Answered
Chosen Option : --

Q.9 Select the option that can be used as a one-word substitute for the given group of words.

Unable to act

- Ans 1. Inert
 2. Lazy
 3. Idle
 4. Lax

Question ID : 65497833766
Status : Not Answered
Chosen Option : --

Q.10 Select the most appropriate meaning of the given idiom.

Big bucks

- Ans 1. A lot of money
 2. A big function
 3. A big bucket
 4. A big loss

Question ID : 65497833756
Status : Not Answered
Chosen Option : --

Q.11 Select the most appropriate option to fill in the blank.

He ran towards his mother _____ and hugged her.

- Ans
- 1. gaily
 - 2. spitefully
 - 3. partially
 - 4. eventually

Question ID : 65497833751
Status : Not Answered
Chosen Option : --

Q.12 Select the INCORRECTLY spelt word.

- Ans
- 1. Miscreant
 - 2. Misalliance
 - 3. Misrepresent
 - 4. Miscelleneous

Question ID : 65497833762
Status : Not Answered
Chosen Option : --

Q.13 Select the correctly spelt word.

- Ans
- 1. Bureaucracy
 - 2. Scavage
 - 3. Warriar
 - 4. Inheritance

Question ID : 65497833750
Status : Not Answered
Chosen Option : --

Q.14 The following sentence has been divided into parts. One of them may contain an error. Select the part that contains the error from the given options. If you don't find any error, mark 'No error' as your answer.

Reva is / one of Gita's best friend / in the class.

- Ans
- 1. one of Gita's best friend
 - 2. No error
 - 3. in the class
 - 4. Reva is

Question ID : 65497833764
Status : Not Answered
Chosen Option : --

Q.15 Select the most appropriate option that can substitute the underlined segment in the given sentence. If there is no need to substitute it, select 'No substitution required'.

I thanked my teacher for explaining me the lesson.

- Ans 1. explaining the lesson to me
 2. her explaining me the lesson
 3. explain me the lessons
 4. No substitution required

Question ID : 65497833758
Status : Not Answered
Chosen Option : --

Q.16 Select the most appropriate option that can substitute the underlined segment in the given sentence. If there is no need to substitute it, select 'No substitution required'.

The laptop that I bought last week works very good.

- Ans 1. very well
 2. very nice
 3. too good
 4. No substitution required

Question ID : 65497833757
Status : Not Answered
Chosen Option : --

Q.17 Select the most appropriate ANTONYM of the given word.

Crisp

- Ans 1. Hard
 2. Fresh
 3. Rotten
 4. Tender

Question ID : 65497833760
Status : Not Answered
Chosen Option : --

Q.18 Select the most appropriate meaning of the given idiom.

To break loose

- Ans 1. To escape
 2. To untie
 3. To set free
 4. To let go

Question ID : 65497833763
Status : Not Answered
Chosen Option : --

Q.19 The following sentence has been split into four segments. Identify the segment that contains a grammatical error.

The mountain / seems to steep / for us / to climb.

- Ans
- 1. The mountain
 - 2. to climb
 - 3. for us
 - 4. seems to steep

Question ID : 65497833753
Status : Not Answered
Chosen Option : --

Q.20 Select the most appropriate option to fill in the blank.

Visitors come from all over the world to _____ the Shalimar Gardens.

- Ans
- 1. perceive
 - 2. observe
 - 3. see
 - 4. look

Question ID : 65497833752
Status : Not Answered
Chosen Option : --

Comprehension:

In the following passage, some words have been deleted. Read the passage carefully and select the most appropriate option to fill in each blank.

Mahatma Gandhi was born (1)_____ 2 October 1869 to Karamchand and Putlibai (2)_____ Porbandar. After completing his studies in England, he (3)_____ to South Africa. When he suffered (4)_____, he started the Civil Disobedience movement (5)_____ civil rights of the Indian community.

SubQuestion No : 21

Q.21 Select the most appropriate option to fill in blank no. 1.

- Ans
- 1. from
 - 2. of
 - 3. on
 - 4. in

Question ID : 65497833769
Status : Not Answered
Chosen Option : --

Comprehension:

In the following passage, some words have been deleted. Read the passage carefully and select the most appropriate option to fill in each blank.

Mahatma Gandhi was born (1)_____ 2 October 1869 to Karamchand and Putlibai (2)_____ Porbandar. After completing his studies in England, he (3)_____ to South Africa. When he suffered (4)_____, he started the Civil Disobedience movement (5)_____ civil rights of the Indian community.

SubQuestion No : 22

Q.22 Select the most appropriate option to fill in blank no. 2.

- Ans 1. at
 2. through
 3. above
 4. below

Question ID : **65497833770**
 Status : **Not Answered**
 Chosen Option : --

Comprehension:

In the following passage, some words have been deleted. Read the passage carefully and select the most appropriate option to fill in each blank.

Mahatma Gandhi was born (1)_____ 2 October 1869 to Karamchand and Putlibai (2)_____ Porbandar. After completing his studies in England, he (3)_____ to South Africa. When he suffered (4)_____, he started the Civil Disobedience movement (5)_____ civil rights of the Indian community.

SubQuestion No : 23

Q.23 Select the most appropriate option to fill in blank no. 3.

- Ans 1. gone
 2. went
 3. going
 4. will go

Question ID : **65497833771**
 Status : **Not Answered**
 Chosen Option : --

Comprehension:

In the following passage, some words have been deleted. Read the passage carefully and select the most appropriate option to fill in each blank.

Mahatma Gandhi was born (1)_____ 2 October 1869 to Karamchand and Putlibai (2)_____ Porbandar. After completing his studies in England, he (3)_____ to South Africa. When he suffered (4)_____, he started the Civil Disobedience movement (5)_____ civil rights of the Indian community.

SubQuestion No : 24

Q.24 Select the most appropriate option to fill in blank no. 4.

- Ans 1. delegation
 2. discrimination
 3. deterioration
 4. distinction

Question ID : **65497833772**
 Status : **Not Answered**
 Chosen Option : --

Comprehension:

In the following passage, some words have been deleted. Read the passage carefully and select the most appropriate option to fill in each blank.

Mahatma Gandhi was born (1)_____ 2 October 1869 to Karamchand and Putlibai (2)_____ Porbandar. After completing his studies in England, he (3)_____ to South Africa. When he suffered (4)_____, he started the Civil Disobedience movement (5)_____ civil rights of the Indian community.

SubQuestion No : 25

Q.25 Select the most appropriate option to fill in blank no. 5.

- Ans 1. to
 2. for
 3. after
 4. with

Question ID : 65497833773
 Status : Not Answered
 Chosen Option : --

Section : Part D Hindi

Q.1 _____ हमारी राजभाषा है। उचित शब्द लिखिए।

- Ans 1. संस्कृत
 2. हिन्दी
 3. गुजराती
 4. मराठी

Question ID : 65497833790
 Status : Answered
 Chosen Option : 2

Q.2 दिए गए वाक्य में रेखांकित खंड को प्रतिस्थापित करने के लिए सबसे उपयुक्त विकल्प का चयन करें। यदि इसे प्रतिस्थापित करने की आवश्यकता नहीं है, तो विकल्प 'किसी बदलाव की आवश्यकता नहीं है' का चयन करें।

मैं आम खाया गया।

- Ans 1. मेरे को
 2. किसी बदलाव की आवश्यकता नहीं है।
 3. मुझे
 4. मुझसे

Question ID : 65497833783
 Status : Answered
 Chosen Option : 4

Q.3 रिक्त स्थान भरने के लिए सबसे उपयुक्त शब्द का चयन करें।

मेरे ऊपर परिवार के पालन-पोषण का _____ है।

- Ans 1. निर्वहन
 2. आभार
 3. आधार
 4. दायित्व

Question ID : 65497833776
 Status : Answered
 Chosen Option : 4

Q.4 दिए गए वाक्य में रेखांकित खंड को प्रतिस्थापित करने के लिए सबसे उपयुक्त विकल्प का चयन करें। यदि इसे प्रतिस्थापित करने की आवश्यकता नहीं है, तो विकल्प 'किसी बदलाव की आवश्यकता नहीं है' का चयन करें।

अधिक जनसंख्या अनेक समस्याओं को जन्म देता है।

- Ans
- 1. किसी बदलाव की आवश्यकता नहीं है।
 - 2. अनेक समस्याओं को जन्म देती है।
 - 3. अनेक समस्या को जन्म देती है।
 - 4. अनेक समस्याओं को जन्म देती हैं।

Question ID : 65497833777
Status : Answered
Chosen Option : 2

Q.5 'छठी का दूध याद आना' मुहाबरे का सही अर्थ है-

- Ans
- 1. संकट के समय पिछले सुख की याद आना
 - 2. अतीत पर गौरवान्वित होना
 - 3. संकट के समय पिछले दुख की याद आना
 - 4. अत्यंत प्रसन्न होना

Question ID : 65497833789
Status : Answered
Chosen Option : 3

Q.6 दिये गये वाक्य के किस भाग में त्रुटि है?

केवल आप ही यह काम निपुणता से कर सकते हैं।

- Ans
- 1. निपुणता से
 - 2. केवल आप ही
 - 3. यह काम
 - 4. कर सकते हैं।

Question ID : 65497833784
Status : Answered
Chosen Option : 1

Q.7 दिए गए शब्द के समानार्थी शब्द का चयन करें।

मोल

- Ans
- 1. मुँ
 - 2. दाम
 - 3. मूल
 - 4. मलीन

Question ID : 65497833779
Status : Answered
Chosen Option : 2

Q.8 सही वर्तनी वाले शब्द का चयन करें।

- Ans 1. परिनाम
 2. परिणाम
 3. परीणाम
 4. परीनाम

Question ID : 65497833774
 Status : Answered
 Chosen Option : 3

Q.9 सही वर्तनी वाले शब्द का चयन करें।

- Ans 1. धराशायी
 2. धाराशाई
 3. धाराशायी
 4. धराशयी

Question ID : 65497833775
 Status : Answered
 Chosen Option : 1

Q.10 'उन्नति' का विलोम शब्द होगा-

- Ans 1. दुर्गति
 2. अपनति
 3. सम्मति
 4. अवनति

Question ID : 65497833785
 Status : Answered
 Chosen Option : 1

Q.11 दिये गये वाक्यांश के लिए एक शब्द दीजिये।

अतिथि की सेवा करने वाला

- Ans 1. आतिथ्य
 2. आतिथेय
 3. आशुतोष
 4. सेवक

Question ID : 65497833780
 Status : Answered
 Chosen Option : 4

Q.12 'किसी और स्थान पर' वाक्यांश के लिए एक शब्द होगा-

- Ans 1. अन्यत्र
 2. तत्र
 3. यत्र
 4. सर्वत्र

Question ID : 65497833786
 Status : Answered
 Chosen Option : 2

Q.13 निम्नलिखित प्रश्न में, दिए गए चार विकल्पों में से, उस विकल्प का चयन करें जो मुहावरे का अर्थ व्यक्त करता है।

हाथ मलना

- Ans 1. वीरता दिखाना
 2. व्यायाम करना
 3. पछताना
 4. संकल्प करना

Question ID : 65497833782
 Status : Answered
 Chosen Option : 4

Q.14 'तिमिर' का विलोम शब्द होगा-

- Ans 1. आकाश
 2. प्रकाश
 3. अंधकार
 4. रात्रि

Question ID : 65497833788
 Status : Answered
 Chosen Option : 2

Q.15 मनुष्य जीवन _____ से सफल होता है। रिक्त स्थान की पूर्ति कीजिए।

- Ans 1. क्रोध
 2. आलसी जीवन से
 3. लोभ-लालच
 4. परिश्रम

Question ID : 65497833791
 Status : Answered
 Chosen Option : 4

Q.16 'व्यथा' का पर्यायवाची है-

- Ans 1. दुःख
 2. वियोग
 3. चिंता
 4. सुख

Question ID : 65497833793
 Status : Answered
 Chosen Option : 3

Q.17 दिये गये वाक्य के किस भाग में त्रुटि है?

मालिक मजदूरों का शोसण करते हैं।

- Ans 1. मालिक
 2. मजदूरों का
 3. शोसण
 4. करते हैं।

Question ID : 65497833792
 Status : Answered
 Chosen Option : 3

Q.18 दिए गए वाक्य का वह भाग ज्ञात करें जिसमें कोई त्रुटि है। यदि कोई त्रुटि नहीं है, तो 'कोई त्रुटि नहीं है' चुने।

कई दिनों की बदली के पीछे आज धूप निकली है।

- Ans 1. बदली के पीछे
 2. धूप निकली है।
 3. कई दिनों क
 4. कोई त्रुटि नहीं है।

Question ID : 65497833778
 Status : Answered
 Chosen Option : 1

Q.19 'धरती और आकाश के बीच का स्थान' वाक्यांश के लिए एक शब्द होगा-

- Ans 1. अंतरीप
 2. द्वीप
 3. गिरि
 4. अंतरिक्ष

Question ID : 65497833787
 Status : Answered
 Chosen Option : 3

Q.20 दिए गए वाक्य में रेखांकित खंड को प्रतिस्थापित करने के लिए सबसे उपयुक्त विकल्प का चयन करें। यदि इसे प्रतिस्थापित करने की आवश्यकता नहीं है, तो विकल्प 'किसी बदलाव की आवश्यकता नहीं है' का चयन करें।

परिवार नियोजन को कार्यक्रमों द्वारा जनसंख्या वृद्धि को रोका जाना चाहिए।

- Ans 1. परिवार नियोजन के कार्यक्रमों द्वारा
 2. किसी बदलाव की आवश्यकता नहीं है।
 3. परिवार नियोजन में कार्यक्रमों द्वारा
 4. परिवार नियोजन से कार्यक्रमों के द्वारा

Question ID : 65497833781
 Status : Answered
 Chosen Option : 1

Comprehension:

आचरण की सभ्यता का देश ही (1) _____ है। उसमें न शारीरिक झगड़े हैं, न मानसिक, न आध्यात्मिक। न उसमें विद्रोह है, न जंग ही का (2) _____ है और न वहाँ कोई ऊँचा है, न (3) _____। न कोई वहाँ धनवान् है और ना कोई वहाँ (4) _____। वहाँ प्रकृति का नाम नहीं, वहाँ तो प्रेम और एकता का (5) _____ राज्य रहता है।

निम्न प्रश्नों के उत्तर उपरोक्त गद्यांश के आधार पर दीजिए।

SubQuestion No : 21

Q.21 गद्यांश के रिक्त स्थान (1) के लिए सर्वाधिक उपयुक्त शब्द होगा-

- Ans 1. मतवाला
 2. निराला
 3. भयंकर
 4. रंगीला

Question ID : 65497833795
 Status : Answered
 Chosen Option : 2

Comprehension:

आचरण की सभ्यता का देश ही (1) _____ है। उसमें न शारीरिक झगड़े हैं, न मानसिक, न आध्यात्मिक। न उसमें विद्रोह है, न जंग ही का (2) _____ है और न वहाँ कोई ऊँचा है, न (3) _____। न कोई वहाँ धनवान् है और न कोई वहाँ (4) _____। वहाँ प्रकृति का नाम नहीं, वहाँ तो प्रेम और एकता का (5) _____ राज्य रहता है।

निम्न प्रश्नों के उत्तर उपरोक्त गद्यांश के आधार पर दीजिए।

SubQuestion No : 22

Q.22 गद्यांश के रिक्त स्थान (2) के लिए सर्वाधिक उपयुक्त शब्द होगा-

- Ans 1. संकेत
 2. नामोनिशान
 3. चीत्कार
 4. लक्षण

Question ID : 65497833796
 Status : Answered
 Chosen Option : 2

Comprehension:

आचरण की सभ्यता का देश ही (1) _____ है। उसमें न शारीरिक झगड़े हैं, न मानसिक, न आध्यात्मिक। न उसमें विद्रोह है, न जंग ही का (2) _____ है और न वहाँ कोई ऊँचा है, न (3) _____। न कोई वहाँ धनवान् है और न कोई वहाँ (4) _____। वहाँ प्रकृति का नाम नहीं, वहाँ तो प्रेम और एकता का (5) _____ राज्य रहता है।

निम्न प्रश्नों के उत्तर उपरोक्त गद्यांश के आधार पर दीजिए।

SubQuestion No : 23

Q.23 गद्यांश के रिक्त स्थान (3) के लिए सर्वाधिक उपयुक्त शब्द होगा-

- Ans 1. मूर्ख
 2. विद्वान
 3. नीचा
 4. समान

Question ID : 65497833797
 Status : Answered
 Chosen Option : 3

Comprehension:

आचरण की सभ्यता का देश ही (1) _____ है। उसमें न शारीरिक झगड़े हैं, न मानसिक, न आध्यात्मिक। न उसमें विद्रोह है, न जंग ही का (2) _____ है और न वहाँ कोई ऊँचा है, न (3) _____। न कोई वहाँ धनवान् है और न कोई वहाँ (4) _____। वहाँ प्रकृति का नाम नहीं, वहाँ तो प्रेम और एकता का (5) _____ राज्य रहता है।

निम्न प्रश्नों के उत्तर उपरोक्त गद्यांश के आधार पर दीजिए।

SubQuestion No : 24

Q.24 गद्यांश के रिक्त स्थान (4) के लिए सर्वाधिक उपयुक्त शब्द होगा-

- Ans 1. देवता
 2. निर्धन
 3. वीर
 4. बलवान

Question ID : 65497833798
 Status : Answered
 Chosen Option : 2

Comprehension:

आचरण की सभ्यता का देश ही (1) _____ है। उसमें न शारीरिक झगड़े हैं, न मानसिक, न आध्यात्मिक। न उसमें विद्रोह है; न जंग ही का (2) _____ है और न वहाँ कोई ऊँचा है, न (3) _____। न कोई वहाँ धनवान् है और ना कोई वहाँ (4) _____। वहाँ प्रकृति का नाम नहीं, वहाँ तो प्रेम और एकता का (5) _____ राज्य रहता है।

निम्न प्रश्नों के उत्तर उपरोक्त गद्यांश के आधार पर दीजिए।

SubQuestion No : 25

Q.25 गद्यांश के रिक्त स्थान (5) के लिए सर्वाधिक उपयुक्त शब्द होगा-

Ans ✓ 1. अखंड

✗ 2. सम्पूर्ण

✗ 3. खंडित

✗ 4. कृत्रिम

Question ID : 65497833799

Status : Answered

Chosen Option : 2

KD Job Updates

Exam Date	16/11/2021
Exam Time :	12:30 PM - 2:00 PM
Subject	Constable GD 2021

Section : Part A General Intelligence and Reasoning

Q.1 Four letter-clusters have been given, out of which three are alike in some manner and one is different. Select the letter-cluster that is different.

- Ans
- 1. FDB
 - 2. OMK
 - 3. JHF
 - 4. USP

Question ID : 65497829500

Status : Answered

Chosen Option : 4

Q.2 In a certain code language, 'MANGO' is written as 'QERKS' and 'APPLE' is written as 'ETTPI'. How will 'GUAVA' be written in that language?

- Ans
- 1. KYFXF
 - 2. KYGZE
 - 3. KYEZE
 - 4. KXEZE

Question ID : 65497829482

Status : Answered

Chosen Option : 3

Q.3 In a certain code language, GAME is written as TUZANOVW, and CAR is written as XYZAIJ. How will POST be written in that language?

- Ans
- 1. OQNPRTSV
 - 2. QRPQTUUV
 - 3. KLLMHIGH
 - 4. KLMNJKGH

Question ID : 65497829505

Status : Answered

Chosen Option : 3

Q.4 Select the option that is related to the third number in the same way as the second number is related to the first number.

20 : 480 :: 25 : ?

- Ans
- 1. 700
 - 2. 725
 - 3. 655
 - 4. 625

Question ID : 65497829488
 Status : Answered
 Chosen Option : 2

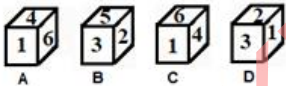
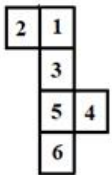
Q.5 Select the option that is related to the third term in the same way as the second term is related to the first term.

ZYGOTE : ZYTOGE :: SEQUENCE : ?

- Ans
- 1. USQNEEEC
 - 2. USQENCEE
 - 3. SUQNEEEC
 - 4. USNQEEEC

Question ID : 65497829504
 Status : Marked For Review
 Chosen Option : 2

Q.6 Select the dice that can be formed by folding the given sheet along the lines.



- Ans
- 1. Only B and D
 - 2. Only B, C and D
 - 3. Only B
 - 4. Only A and C

Question ID : 65497829490
 Status : Answered
 Chosen Option : 2

Q.7 Aditi is the daughter of Sanket. Vritti is the daughter of Ankit. Kriti is the mother of Mahi. Neeta is Sanket's wife. Neeta is the mother-in-law of Vritti's mother Kriti. Which of the following statements is NOT correct?

- Ans
- 1. Ankit is the father of Mahi.
 - 2. Vritti is the sister of Mahi.
 - 3. Aditi is the daughter of Neeta.
 - 4. Kriti is the daughter of Sanket.

Question ID : 65497829506
 Status : Answered
 Chosen Option : 4

Q.8 If 'A' denotes 'addition', 'B' denotes 'multiplication', 'C' denotes 'subtraction', and 'D' denotes 'division', then what will be the value of the following expression?

100 D (1 B 4) A 2 B (13 A 11) C 3 B (17 C 12)


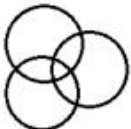


- Ans
- 1. 52
 - 2. 58
 - 3. 49
 - 4. 60

Question ID : 65497829489
 Status : Answered
 Chosen Option : 2

Q.9 Select the Venn diagram that best represents the relationship between the following classes.

School, Teacher, Employee

Ans

- 1. 
- 2. 
- 3. 
- 4. 

Question ID : 65497829499
 Status : Answered
 Chosen Option : 1

Q.10 Select the number from among the given options that can replace the question mark (?) in the following series.

5, 9, 18, 34, ?, 95

- Ans
- 1. 65
 - 2. 69
 - 3. 63
 - 4. 59

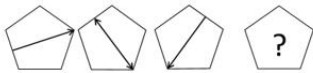
Question ID : 65497829502
 Status : Answered
 Chosen Option : 4

Q.11 Four number triads have been given, out of which three are alike in some manner and one is different. Select the number triad that is different.

- Ans
- 1. (46, 65, 82)
 - 2. (54, 73, 90)
 - 3. (21, 40, 57)
 - 4. (39, 48, 75)

Question ID : 65497829484
 Status : Answered
 Chosen Option : 4

Q.12 Select the figure from among the given options that can replace the question mark (?) in the following series.



Ans

- 1.
- 2.
- 3.
- 4.

Question ID : 65497829495
 Status : Answered
 Chosen Option : 4

Q.13 Select the correct option that indicates the arrangement of the given words in the order in which they appear in an English dictionary.

1. Dermatitis
2. Desistance
3. Derogation
4. Descendant
5. Dereliction

- Ans
- 1. 5, 4, 1, 3, 2
 - 2. 5, 1, 3, 2, 4
 - 3. 5, 2, 1, 3, 4
 - 4. 5, 1, 3, 4, 2

Question ID : 65497829492

Status : Answered

Chosen Option : 4

Q.14 Select the combination of letters that when sequentially placed in the blanks of the given series will complete the series.

A _ _ B _ _ A B _ C A _ B B C

- Ans
- 1. B, C, A, A, A, B
 - 2. B, A, B, A, C, B
 - 3. A, B, C, A, B, A
 - 4. B, B, C, C, A, B

Question ID : 65497829493

Status : Answered

Chosen Option : 3

Q.15 O, P, Q, R, S, T and U are sitting in a row facing north. U is sitting to the immediate right of T. Q is sitting in between R and O. P, who is on the extreme right, is sitting to the immediate right of O. S is sitting to the immediate left of R. Who is sitting in the middle of the row?

- Ans
- 1. S
 - 2. R
 - 3. T
 - 4. Q

Question ID : 65497829498

Status : Answered

Chosen Option : 2

Q.16 Read the given statements and conclusions carefully. Assuming that the information given in the statements is true, even if it appears to be at variance with commonly known facts, decide which of the given conclusions logically follow(s) from the statements.

Statements:

Some cats are animals.
All animals are plants.

Conclusions:

I. All cats are plants.
II. Some plants are cats.
III. Some plants are animals.
IV. All animals are cats.

- Ans**
- 1. Only conclusion I follows
 - 2. All the conclusions follow
 - 3. Only conclusions I, II and III follow
 - 4. Only conclusions II and III follow

Question ID : 65497829483

Status : Answered

Chosen Option : 4

Q.17 Six friends are sitting in a straight line. E is 4th from the right. E is between B and D. A is adjacent to B. D is adjacent to C. D is between E and C. F is adjacent to C. Who is sitting between F and D?

- Ans**
- 1. A
 - 2. E
 - 3. C
 - 4. B

Question ID : 65497829487

Status : Answered

Chosen Option : 3

Q.18 Select the number from among the given options that can replace the question mark (?) in the following series.

153, 149, 143, 135, ?

- Ans**
- 1. 131
 - 2. 125
 - 3. 129
 - 4. 127

Question ID : 65497829494

Status : Answered

Chosen Option : 2

Q.19 If the diagonal of a square is increased by 4 cm, its area increases by 56 cm^2 . Find the ratio of the new area of the square to the initial area of the square.

- Ans**
- 1. 16 : 9
 - 2. 13 : 8
 - 3. 18 : 11
 - 4. 12 : 5

Question ID : 65497829485

Status : Not Answered

Chosen Option : --

Q.20 Select the letter-cluster from among the given options that can replace the question mark (?) in the following series.

IOM, NTR, SYW, ?

- Ans 1. XDB
 2. JPN
 3. NSX
 4. OTZ

Question ID : 65497829496
 Status : Answered
 Chosen Option : 1

Q.21 Select the correct mirror image of the given combination when the mirror is placed at 'PQ' as shown.

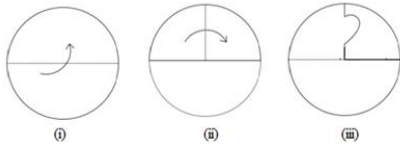
MERCHANT |
 P
 Q

- Ans 1. TИAHCЯEM
 2. MEBCNAT
 3. TИCHЯEM
 4. MEBCNAT

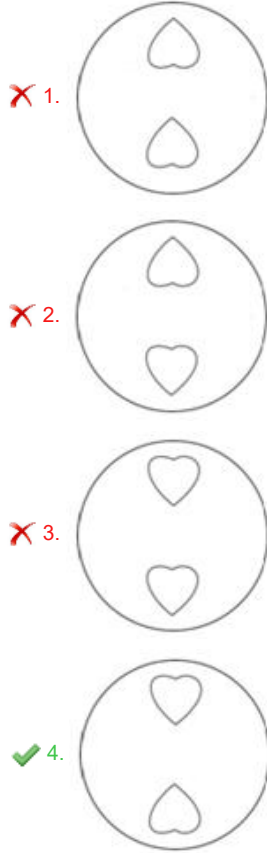
Question ID : 65497829503
 Status : Answered
 Chosen Option : 1

KD Job Updates

Q.22 The sequence of folding a piece of paper and the manner in which the folded paper has been cut is shown in the following figures. How would this paper look when unfolded?



Ans



Question ID : 65497829486

Status : Answered

Chosen Option : 4

Q.23 In a certain code language, 'PHENYL' is coded as '9-11-17-8-5-13' and 'COLONY' is coded as '6-12-13-12-8-5'. How will 'COLONEL' be coded in that language?

- Ans
- 1. 6-12-12-13-8-17-13
 - 2. 6-12-13-12-8-17-13
 - 3. 6-12-12-13-8-11-13
 - 4. 6-17-12-13-8-13-11

Question ID : 65497829501

Status : Answered

Chosen Option : 2

Q.24 Select the option in which the given figure is embedded (rotation is NOT allowed).

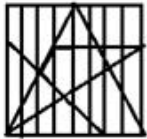


Ans

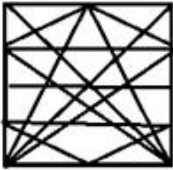
✗ 1.



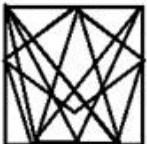
✓ 2.



✗ 3.



✗ 4.



Question ID : 65497829491
 Status : Answered
 Chosen Option : 3

Q.25 'Experimenter' is related to 'Lab' in the same way as 'Chef' is related to '_____'.
 Ans

✗ 1. Cooking

✗ 2. Food

✗ 3. Dishes

✓ 4. Kitchen

Question ID : 65497829497
 Status : Answered
 Chosen Option : 4

Section : Part B General Knowledge and General Awareness

Q.1 _____ launched the Fit India Mobile App at an event at Major Dhyan Chand National Stadium, New Delhi in August 2021.

Ans ✓ 1. Anurag Singh Thakur

✗ 2. Nisith Praman k

✗ 3. Ravi Mittal

✗ 4. Usha Sharma

Question ID : 65497829530
 Status : Answered
 Chosen Option : 1

Q.2 The acceleration of an object is said to be _____ when an object travels in a straight line and its velocity increases or decreases by equal amount in equal intervals of time.

- Ans
- 1. negative
 - 2. non-uniform
 - 3. uniform
 - 4. positive

Question ID : 65497829516
Status : Answered
Chosen Option : 3

Q.3 Who was appointed as the State Election Commissioner of Jammu and Kashmir on October 30, 2020?

- Ans
- 1. Kewal Kumar Sharma
 - 2. V Bhaskaran
 - 3. Shatrunjay Kumar Singh
 - 4. Manoj Kumar

Question ID : 65497829520
Status : Not Answered
Chosen Option : --

Q.4 Which of the following animals breathes through its skin?

- Ans
- 1. Frog
 - 2. Rabbit
 - 3. Peacock
 - 4. Deer

Question ID : 65497829514
Status : Answered
Chosen Option : 1

Q.5 Which of the following is the most reactive metal?

- Ans
- 1. Silver
 - 2. Aluminium
 - 3. Iron
 - 4. Potassium

Question ID : 65497829513
Status : Answered
Chosen Option : 4

Q.6 Which non-metal among the following is poly-atomic?

- Ans
- 1. Sulphur
 - 2. Argon
 - 3. Oxygen
 - 4. Helium

Question ID : 65497829525
Status : Answered
Chosen Option : 1

Q.7 Who among the following was appointed as the first Municipal Commissioner of Bombay in 1865?

- Ans
- 1. William Hunter
 - 2. Charles Atkinson
 - 3. H Fowler
 - 4. Arthur Crawford

Question ID : 65497829510
Status : Not Answered
Chosen Option : --

Q.8 'La Liga' title is associated with _____.

- Ans
- 1. tennis
 - 2. football
 - 3. cricket
 - 4. sprinting

Question ID : 65497829508
Status : Answered
Chosen Option : 2

Q.9 In which of the following states is the Boramdeo temple located, where each year in the last week of March 'Bhoramdeo Mahotsav' is celebrated?

- Ans
- 1. West Bengal
 - 2. Karnataka
 - 3. Tamil Nadu
 - 4. Chhattisgarh

Question ID : 65497829512
Status : Answered
Chosen Option : 1

Q.10 Who became the first Indian Air Force pilot to perform a wingsuit skydive jump? S/he achieved this feat in July 2019.

- Ans
- 1. Shital Mahajan Rane
 - 2. Archana Sardana
 - 3. Rachel Thomas
 - 4. Tarun Chaudhri

Question ID : 65497829518
Status : Not Answered
Chosen Option : --

Q.11 _____ was the son of a Chief of the Jnatrika (or Jhatrika) Kshatriya clan.

- Ans
- 1. Gautama Buddha
 - 2. Rishabhanath
 - 3. Vardhamana Mahavira
 - 4. Parshvanath

Question ID : 65497829527
Status : Not Answered
Chosen Option : --

Q.12 _____ was the residence of the Mughal emperors of India for nearly 200 years until 1857.

- Ans 1. Jehangir Mahal
 2. Red Fort
 3. Agra Fort
 4. Pari Mahal

Question ID : 65497829521
 Status : Answered
 Chosen Option : 3

Q.13 Which of the following states won the 'Best Tableau' award at the 71st Republic Day parade in January 2020?

- Ans 1. Assam
 2. Goa
 3. Odisha
 4. Uttar Pradesh

Question ID : 65497829523
 Status : Answered
 Chosen Option : 4

Q.14 The Uttar Pradesh cabinet approved a proposal to name a zoological garden at _____ after the freedom fighter and revolutionary Ashfaqullah Khan.

- Ans 1. Gorakhpur
 2. Faizabad
 3. Shahjahanpur
 4. Ghaziabad

Question ID : 65497829517
 Status : Answered
 Chosen Option : 1

Q.15 Which of the following statements about the Mahanadi river is INCORRECT?

- Ans 1. It rises in the highlands of Chhattisgarh.
 2. It drains into the Arabian Sea.
 3. A part of its river basin lies in Maharashtra.
 4. It is about 860 km long.

Question ID : 65497829522
 Status : Answered
 Chosen Option : 2

Q.16 Who is the author of the book 'Courts of India: Past to Present'?

- Ans 1. Shashi Tharoor
 2. Satyarth Nayak
 3. Jayanta Kalita
 4. Ranjan Gogoi

Question ID : 65497829515
 Status : Answered
 Chosen Option : 4

Q.17 The Government of India approved the Ayushman Bharat Pradhan Mantri Jan Arogya Yojana (AB-PM-JAY) in the year _____.

- Ans 1. 2018
 2. 2014
 3. 2019
 4. 2015

Question ID : 65497829531
 Status : Answered
 Chosen Option : 3

Q.18 The money value of all the final goods and services produced within the country during a particular year is called _____.

- Ans 1. per capita income
 2. net Domestic Product
 3. national Income
 4. gross Domestic Product

Question ID : 65497829511
 Status : Answered
 Chosen Option : 4

Q.19 Which of the following options gives the correct chronological order of rulers of the Mauryan Empire?

- Ans 1. Brihadratha - Chandragupta - Bindusara - Ashoka
 2. Ashoka - Brihadratha - Chandragupta - Bindusara
 3. Chandragupta - Bindusara - Ashoka - Brihadratha
 4. Bindusara - Chandragupta - Ashoka - Brihadratha

Question ID : 65497829528
 Status : Answered
 Chosen Option : 3

Q.20 Which of the following is NOT a fundamental right under the 44th Amendment Act, 1978 of Indian constitution?

- Ans 1. Right to property
 2. Right to equality
 3. Right against exploitation
 4. Right to religion

Question ID : 65497829519
 Status : Answered
 Chosen Option : 1

Q.21 Which of the following countries hosted the 13th edition of the 2020 ICC Under 19 Cricket World Cup?

- Ans 1. England
 2. South Africa
 3. Australia
 4. India

Question ID : 65497829526
 Status : Answered
 Chosen Option : 2

Q.22 In which state is the Hogenakkal Falls located?

- Ans 1. Andhra Pradesh
 2. Kerala
 3. Maharashtra
 4. Tamil Nadu

Question ID : 65497829507
Status : Not Answered
Chosen Option : --

Q.23 The Life Insurance Corporation of India Act was passed by the Parliament in the year _____.

- Ans 1. 1956
 2. 1948
 3. 1971
 4. 1965

Question ID : 65497829529
Status : Not Answered
Chosen Option : --

Q.24 Which of the following is a biometric enabled digital service for pensioners launched by the Government of India?

- Ans 1. Pradhan Mantri Jeevan Jyoti Beema Yojna
 2. Pradhan Mantri Mudra Yojna
 3. Pradhan Mantri Jan Dhan Yojna
 4. Jeevan Pramaan

Question ID : 65497829509
Status : Answered
Chosen Option : 4

Q.25 Tvesa Malik is an Indian _____ player.

- Ans 1. volleyball
 2. golf
 3. chess
 4. basketball

Question ID : 65497829524
Status : Not Answered
Chosen Option : --

Q.1 The value of $42 \div 9$ of $6 - [64 \div 48 \times 3 - 15 \div 8 \times (11 - 17) \div 9] \div 14$ is:

- Ans
- 1. $\frac{19}{36}$
 - 2. $\frac{7}{18}$
 - 3. $\frac{29}{72}$
 - 4. $\frac{5}{12}$

Question ID : 65497829551

Status : Not Answered

Chosen Option : --

Q.2 A can do $\frac{2}{5}$ of a work in 6 days and B can do 30% of the same work in 3 days. They worked together for 4 days. The remaining work was completed by C alone in 6 days. B and C together can complete 70% of the original work in:

- Ans
- 1. $5\frac{1}{2}$ days
 - 2. 4 days
 - 3. 5 days
 - 4. $4\frac{1}{2}$ days

Question ID : 65497829553

Status : Answered

Chosen Option : 4

Q.3 The amount of a certain sum in 3 years at simple interest at $x\%$ p.a. is ₹5,472 and the amount of the same sum in $7\frac{1}{2}$ years at the same rate, at simple interest is ₹6,930. The value of x is:

- Ans
- 1. 7.2
 - 2. 8.5
 - 3. 8
 - 4. 6.5

Question ID : 65497829555

Status : Not Answered

Chosen Option : --

Q.4 There are two sections A and B of a class, consisting of 38 and 42 students, respectively. If the average weight of the students of section A is 55 kg and that of section B is 32 kg, find the average weight of all the students in the class.

- Ans
- 1. 42 kg
 - 2. 42.925 kg
 - 3. 44.925 kg
 - 4. 40.925 kg

Question ID : 65497829537

Status : Answered

Chosen Option : 2

Q.5 A dealer sold an article at a loss of 4%. Had he sold it for ₹120 more, he would have gained 8%. To gain 11%, he should sell the article for?

- Ans**
- ✓ 1. ₹1,110
 - ✗ 2. ₹1,200
 - ✗ 3. ₹1,320
 - ✗ 4. ₹1,210

Question ID : 65497829549
Status : Answered
Chosen Option : 1

Q.6 A sum fetched a simple interest of ₹3,040 at the rate of 8 % p.a. in 5 years. What is the sum?

- Ans**
- ✗ 1. ₹8,600
 - ✓ 2. ₹7,600
 - ✗ 3. ₹7,700
 - ✗ 4. ₹6,600

Question ID : 65497829539
Status : Answered
Chosen Option : 2

Q.7 The greatest number that on dividing 2675 and 2320 leaves the remainders 5 and 6, respectively, is:

- Ans**
- ✗ 1. 168
 - ✗ 2. 170
 - ✗ 3. 187
 - ✓ 4. 178

Question ID : 65497829536
Status : Answered
Chosen Option : 4

Q.8 Speed of an aircraft is 120 km/min. This speed in m/sec is:

- Ans**
- ✗ 1. 120000
 - ✗ 2. 12000
 - ✗ 3. 1200
 - ✓ 4. 2000

Question ID : 65497829543
Status : Answered
Chosen Option : 4

Q.9 A and B can complete a piece of work in 120 days, B and C can complete it in 150 days, and A and C can complete it in 200 days. In how many days can B alone complete two-fifths of the same work?

- Ans**
- 1. 200
 - 2. 100
 - 3. 80
 - 4. 175

Question ID : 65497829547
Status : Answered
Chosen Option : 3

Q.10 If the sides of a triangle measure 21 cm, 35 cm and 28 cm, what is the measure of its in radius? (in cm)

- Ans**
- 1. 8 cm
 - 2. 7 cm
 - 3. 21 cm
 - 4. 9 cm

Question ID : 65497829541
Status : Not Answered
Chosen Option : --

Q.11 After giving a discount of 20% on the marked price of an article, it is sold for ₹120. Had the discount not been given, the profit would have been 20%. What is the cost price of the article?

- Ans**
- 1. ₹120
 - 2. ₹130
 - 3. ₹100
 - 4. ₹125

Question ID : 65497829550
Status : Answered
Chosen Option : 4

Q.12 A discount of 20% on the price of an article is the same as a discount of 25% on the price of another article. The prices of the two articles will be, respectively:

- Ans**
- 1. ₹40 and ₹50
 - 2. ₹60 and ₹50
 - 3. ₹50 and ₹40
 - 4. ₹50 and ₹60

Question ID : 65497829545
Status : Answered
Chosen Option : 3

Q.13 The sides of a triangular park are 96 m, 110 m and 146 m. Its area is equal to the area of a field in the shape of a rhombus, one of whose diagonals is 60 m. The length (in m) of its other diagonal is:

- Ans**
- 1. 176
 - 2. 132
 - 3. 218
 - 4. 88

Question ID : 65497829556
Status : Not Answered
Chosen Option : --

Q.14 What is the third proportional to 9 and 36?

- Ans**
- 1. 72
 - 2. 288
 - 3. 144
 - 4. 122

Question ID : 65497829540
Status : Answered
Chosen Option : 3

Q.15 Solve the following:

$$523 + 523 \times 523 \div 523$$

- Ans**
- 1. 1005
 - 2. 1235
 - 3. 1542
 - 4. 1046

Question ID : 65497829542
Status : Answered
Chosen Option : 4

Q.16 A shopkeeper has some toys. He sells two-third of the toys at a profit of 35% and the remaining toys at 10% loss. What is his overall percentage of profit?

- Ans**
- 1. 16%
 - 2. 20%
 - 3. 18%
 - 4. 25%

Question ID : 65497829552
Status : Answered
Chosen Option : 2

Q.17 Two trains start from places A and B, respectively, and travel towards each other at the speeds of 60 km/h and 50 km/h, respectively. By the time they meet, the faster train has travelled 110 km more than the slower train. What is the distance between A and B?

- Ans**
- 1. 1100 km
 - 2. 1200 km
 - 3. 1150 km
 - 4. 1210 km

Question ID : 65497829548
Status : Answered
Chosen Option : 4

Q.18 The ratio of two numbers is 9 : 5. If 8 is added to the larger number and 4 is subtracted from the smaller number, the greater number becomes twice the smaller number. The larger number is:

- Ans**
- 1. 110
 - 2. 104
 - 3. 144
 - 4. 114

Question ID : 65497829538
Status : Answered
Chosen Option : 3

Q.19 Vignesh spends 42% of his monthly salary on food, 16% on house rent, 11% on entertainment and 7% on conveyance. But due to some family function, he has to borrow ₹12,000 from a money lender to meet the expenses of ₹18,000. What is his monthly salary?

- Ans**
- 1. ₹20,000
 - 2. ₹24,000
 - 3. ₹30,000
 - 4. ₹25,000

Question ID : 65497829535
Status : Answered
Chosen Option : 4

Q.20 The average of 4, 6, 8, 12 and x is 7 and the average of x , 9, 13, 15 and y is 9. What is the value of $2x - 3y$?

- Ans**
- 1. 5
 - 2. 3
 - 3. 19
 - 4. 1

Question ID : 65497829544
Status : Answered
Chosen Option : 4

Q.21 If the compound interest on a certain sum of money for two years at 9% p.a. is ₹3,762, then the sum is:

- Ans**
- 1. ₹20,000
 - 2. ₹18,000
 - 3. ₹25,000
 - 4. ₹24,000

Question ID : 65497829533
Status : Answered
Chosen Option : 1

Q.22 The ratio of the ages of A, B and C, 5 years ago, was 4 : 5 : 7. The sum of their present ages is 135 years. What will be the sum of the ages (in years) of B and C, 3 years from now?

- Ans**
- 1. 100
 - 2. 96
 - 3. 106
 - 4. 112

Question ID : 65497829554
Status : Answered
Chosen Option : 2

Q.23 Three numbers are in the ratio 4 : 9 : 13 and their LCM is 2340. Their HCF is:

- Ans**
- 1. 7
 - 2. 3
 - 3. 4
 - 4. 5

Question ID : 65497829534
Status : Answered
Chosen Option : 4

Q.24 A man sells two articles at ₹9,180 each. He gains 8% on one article and loses 15% on the other. His overall profit or loss is:

- Ans**
- 1. Profit ₹840
 - 2. Loss ₹840
 - 3. Loss ₹940
 - 4. Profit ₹940

Question ID : 65497829532
Status : Not Answered
Chosen Option : --

Q.25 The price of a car increased by 5% while its sales decreased by 16%. What is the percentage change in the total revenue?

- Ans**
- 1. 5% decrease
 - 2. 9% increase
 - 3. 9% decrease
 - 4. 5% increase

Question ID : 65497829546
Status : Not Answered

Section : Part D English

Q.1 Select the most appropriate meaning of the given idiom.

To be on the same page

- Ans
- 1. To be published together
 - 2. To read a book together
 - 3. To understand what the other says
 - 4. To agree on something

Question ID : 65497829571
Status : Answered
Chosen Option : 3

Q.2 Select the option that can be used as a one-word substitute for the given group of words.

One who collects coins

- Ans
- 1. Fatalist
 - 2. Philatelist
 - 3. Numismatist
 - 4. Anthropologist

Question ID : 65497829567
Status : Answered
Chosen Option : 3

Q.3 Select the most appropriate ANTONYM of the given word.

Spellbound

- Ans
- 1. Amazed
 - 2. Captivated
 - 3. Enthralled
 - 4. Disenchanted

Question ID : 65497829569
Status : Answered
Chosen Option : 4

Q.4 The following sentence has been split into four segments. Identify the segment that contains a grammatical error.

We'll look at / your pet / when you go / on a vacation.

- Ans
- 1. We'll look at
 - 2. on a vacation
 - 3. when you go
 - 4. your pet

Question ID : 65497829574
Status : Answered
Chosen Option : 1

Q.5 Select the most appropriate option that can substitute the underlined word in the given sentence.

Besides generating revenue, tourism brings a break from the ceremony of daily life.

- Ans
- 1. scrutiny
 - 2. symphony
 - 3. monotony
 - 4. company

Question ID : 65497829559
 Status : Answered
 Chosen Option : 3

Q.6 Select the correctly spelt word.

- Ans
- 1. Asassination
 - 2. Bureaucracy
 - 3. Philianthropist
 - 4. Peadeatrician

Question ID : 65497829568
 Status : Answered
 Chosen Option : 2

Q.7 Select the most appropriate meaning of the given idiom.

Tickled pink

- Ans
- 1. Fond of pink
 - 2. Very sensitive
 - 3. Very pleased
 - 4. Easily teased

Question ID : 65497829560
 Status : Answered
 Chosen Option : 3

Q.8 Select the most appropriate option to fill in the blank.

My sister bought the _____ watch.

- Ans
- 1. antipathy
 - 2. colloquial
 - 3. antilocal
 - 4. antique

Question ID : 65497829570
 Status : Answered
 Chosen Option : 4

Q.9 Select the most appropriate SYNONYM of the given word.

Ample

- Ans 1. Sparse
 2. Sufficient
 3. Limited
 4. Scarce

Question ID : 65497829575
Status : Answered
Chosen Option : 2

Q.10 Select the option that can be used as a one-word substitute for the given group of words.

Many fish swimming together

- Ans 1. Shoal
 2. Bevy
 3. Brood
 4. Flock

Question ID : 65497829561
Status : Answered
Chosen Option : 3

Q.11 Select the option that can be used as a one-word substitute for the given group of words.

A person who supervises during an examination

- Ans 1. Invigilator
 2. Examinee
 3. Principal
 4. Administrator

Question ID : 65497829576
Status : Answered
Chosen Option : 1

Q.12 The following sentence has been split into four segments. Identify the segment that contains a grammatical error.

The most important / of all my goals / are to/ learn English.

- Ans 1. of all my goals
 2. The most important
 3. are to
 4. learn English

Question ID : 65497829557
Status : Answered
Chosen Option : 3

Q.13 Select the most appropriate option that can substitute the underlined segment in the given sentence. If there is no need to substitute it, select 'No substitution required'.

The condition of the house had been so deteriorated from lack of maintenance that nobody wanted to purchase it.

- Ans
- 1. No substitution required
 - 2. was deteriorating
 - 3. was so deteriorated
 - 4. had so deteriorated

Question ID : 65497829572
Status : Answered
Chosen Option : 3

Q.14 Select the most appropriate synonym of the given word.

Submissive

- Ans
- 1. Adamant
 - 2. Obdurate
 - 3. Obedient
 - 4. Obstinate

Question ID : 65497829558
Status : Answered
Chosen Option : 4

Q.15 Select the option that will improve the underlined part of the given sentence. In case no improvement is needed, select 'No improvement required'.

The new President has bring in many reforms.

- Ans
- 1. No improvement required
 - 2. brought about
 - 3. bring up
 - 4. brought out

Question ID : 65497829573
Status : Not Answered
Chosen Option : --

Q.16 Select the most appropriate ANTONYM of the given word.

Fictitious

- Ans
- 1. False
 - 2. Factual
 - 3. Imaginative
 - 4. Subjective

Question ID : 65497829566
Status : Answered
Chosen Option : 2

Q.17 Select the most appropriate option to fill in the blank.

She _____ why I had not sent her an invitation.

- Ans
- 1. granted
 - 2. enquired
 - 3. desired
 - 4. denied

Question ID : 65497829564
 Status : Answered
 Chosen Option : 2

Q.18 Select the most appropriate option to fill in the blank.

The government should take steps to _____ pollution.

- Ans
- 1. control
 - 2. convey
 - 3. conduct
 - 4. consume

Question ID : 65497829562
 Status : Answered
 Chosen Option : 1

Q.19 Select the INCORRECTLY spelt word.

- Ans
- 1. Wistle
 - 2. Cereal
 - 3. Tunnel
 - 4. Rustle

Question ID : 65497829563
 Status : Answered
 Chosen Option : 1

Q.20 The following sentence has been split into four segments. Identify the segment that contains a grammatical error.

I wish / I am / the Principal / of the school!

- Ans
- 1. I wish
 - 2. of the school
 - 3. I am
 - 4. the Principal

Question ID : 65497829565
 Status : Answered
 Chosen Option : 3

Comprehension:

In the following passage, some words have been deleted. Read the passage carefully and select the most appropriate option to fill in each blank.

Writing is a form (1)_____, and neat handwriting is important when writing (2)_____ that will be read by someone else. We (3)_____ by the quality of our handwriting, and (4)_____ our handwriting is poor, we (5)_____ to be lazy or incompetent.

SubQuestion No : 21

Q.21 Select the most appropriate option to fill in blank no. 1.

- Ans 1. in expression
 2. to expressing
 3. for expression
 4. of expression

Question ID : 65497829578

Status : Answered

Chosen Option : 4

Comprehension:

In the following passage, some words have been deleted. Read the passage carefully and select the most appropriate option to fill in each blank.

Writing is a form (1)_____, and neat handwriting is important when writing (2)_____ that will be read by someone else. We (3)_____ by the quality of our handwriting, and (4)_____ our handwriting is poor, we (5)_____ to be lazy or incompetent.

SubQuestion No : 22

Q.22 Select the most appropriate option to fill in blank no. 2.

- Ans 1. nothing
 2. everything
 3. anything
 4. each thing

Question ID : 65497829579

Status : Answered

Chosen Option : 3

Comprehension:

In the following passage, some words have been deleted. Read the passage carefully and select the most appropriate option to fill in each blank.

Writing is a form (1)_____, and neat handwriting is important when writing (2)_____ that will be read by someone else. We (3)_____ by the quality of our handwriting, and (4)_____ our handwriting is poor, we (5)_____ to be lazy or incompetent.

SubQuestion No : 23

Q.23 Select the most appropriate option to fill in blank no. 3.

- Ans 1. should be often judged
 2. are often judged
 3. have been often judged
 4. judged often

Question ID : 65497829580

Status : Answered

Chosen Option : 2

Comprehension:

In the following passage, some words have been deleted. Read the passage carefully and select the most appropriate option to fill in each blank.

Writing is a form (1)_____, and neat handwriting is important when writing (2)_____ that will be read by someone else. We (3)_____ by the quality of our handwriting, and (4)_____ our handwriting is poor, we (5)_____ to be lazy or incompetent.

SubQuestion No : 24

Q.24 Select the most appropriate option to fill in blank no. 4.

- Ans 1. as
 2. while
 3. where
 4. when

Question ID : 65497829581

Status : Answered

Chosen Option : 4

Comprehension:

In the following passage, some words have been deleted. Read the passage carefully and select the most appropriate option to fill in each blank.

Writing is a form (1)_____, and neat handwriting is important when writing (2)_____ that will be read by someone else. We (3)_____ by the quality of our handwriting, and (4)_____ our handwriting is poor, we (5)_____ to be lazy or incompetent.

SubQuestion No : 25

Q.25 Select the most appropriate option to fill in blank no. 5.

- Ans 1. appear
 2. see
 3. expose
 4. look

Question ID : 65497829582

Status : Answered

Chosen Option : 1

Section : Part D Hindi

Q.1 दिए गए वाक्य में रेखांकित खंड को प्रतिस्थापित करने के लिए सबसे उपयुक्त विकल्प का चयन करें। यदि इसे प्रतिस्थापित करने की आवश्यकता नहीं है, तो विकल्प 'किसी बदलाव की आवश्यकता नहीं है' का चयन करें।

भाई साहब को मुझे एक रुपया दिया है।

- Ans 1. भाई साहब द्वारा
 2. भाई साहब
 3. किसी बदलाव की आवश्यकता नहीं है।
 4. भाई साहब ने

Question ID : 65497829593

Status : Not Answered

Chosen Option : --

Q.2 रिक्त स्थान की पूर्ति के लिए सबसे उपयुक्त शब्द का चयन करें-

वह वृक्ष की _____ डाली काट रहा था।

- Ans
- 1. सुखी
 - 2. सखी
 - 3. सूखी
 - 4. सामान्य

Question ID : 65497829587
Status : Not Answered
Chosen Option : --

Q.3 रिक्त स्थान की पूर्ति के लिए सबसे उपयुक्त शब्द का चयन करें-

रोगी ने चिकित्सक से _____ लिया।

- Ans
- 1. मत्रणा
 - 2. आज्ञा
 - 3. परामर्श
 - 4. अनुदान

Question ID : 65497829586
Status : Not Answered
Chosen Option : --

Q.4 दिए गए वाक्य का वह भाग ज्ञात करें जिसमें कोई त्रुटि है। यदि कोई त्रुटि नहीं है, तो 'कोई त्रुटि नहीं है' चुनें।

कई रेलवे के(1)/ कर्मचारियों की(2)/ गिरफ्तारी हुई।(3)/ कोई त्रुटि नहीं है।(4)

- Ans
- 1. 3
 - 2. 1
 - 3. 4
 - 4. 2

Question ID : 65497829594
Status : Not Answered
Chosen Option : --

Q.5 दिए गए वाक्य में रेखांकित खंड को प्रतिस्थापित करने के लिए सबसे उपयुक्त विकल्प का चयन करें। यदि इसे प्रतिस्थापित करने की आवश्यकता नहीं है, तो विकल्प 'किसी बदलाव की आवश्यकता नहीं है' का चयन करें।

रात दस बजे से दिल्ली में जक्शन से हम कश्मीर मेल में सवार हुए।

- Ans
- 1. किसी बदलाव की आवश्यकता नहीं है।
 - 2. रात दस बजे तक दिल्ली में जक्शन में हम
 - 3. रात दस बजे से, दिल्ली के जक्शन से हम
 - 4. रात दस बजे, दिल्ली के जक्शन से हम

Question ID : 65497829588
Status : Not Answered
Chosen Option : --

Q.6 'ऊपर की ओर जाने वाला' वाक्यांश के लिए एक शब्द होगा-

- Ans
- 1. आगामी
 - 2. प्रतिगामी
 - 3. ऊर्ध्वगामी
 - 4. अधोगामी

Question ID : 65497829601
Status : Not Answered
Chosen Option : --

Q.7 उस विकल्प का चयन करें जो निम्न मुहावरे का अर्थ व्यक्त करता है।

कलेजा ठडा होना

- Ans
- 1. मन में शान्ति होना
 - 2. धीरज रखना
 - 3. प्रिय होना
 - 4. बहुत दुखी होना

Question ID : 65497829592
Status : Not Answered
Chosen Option : --

Q.8 दिए गए वाक्यांश के लिए एक शब्द दीजिए।

प्रार्थना या निवेदन करने वाला

- Ans
- 1. प्रार्थी
 - 2. स्तुति
 - 3. भक्त वत्सल
 - 4. भजन

Question ID : 65497829583
Status : Not Answered
Chosen Option : --

Q.9 दिए गए शब्द का विलोम चुनें।

निर्मल

- Ans
- 1. मैला
 - 2. गदा
 - 3. मलिन
 - 4. विमल

Question ID : 65497829591
Status : Not Answered
Chosen Option : --

Q.10 'विशाल' का विलोम शब्द होगा-

- Ans
- 1. विराट
 - 2. क्षणिक
 - 3. लघु
 - 4. विकराल

Question ID : 65497829600
Status : Not Answered
Chosen Option : --

Q.11 दिए गए शब्द का समानार्थी शब्द चुनें-

युक्ति

- Ans 1. युक्त
 2. उपाय
 3. जुड़ा हुआ
 4. सलग्न

Question ID : 65497829595
 Status : Not Answered
 Chosen Option : --

Q.12 सही वर्तनी वाले शब्द का चयन करें।

- Ans 1. प्रलहाद
 2. प्रहलाद
 3. प्रल्हाद
 4. पहलाद

Question ID : 65497829590
 Status : Not Answered
 Chosen Option : --

Q.13 चंद्रमा के समान मुखवाला - वाक्यांश के लिए एक शब्द लिखिए-

- Ans 1. दसमुख
 2. चंद्रमुख
 3. लौहपुरुष
 4. गदाधर

Question ID : 65497829598
 Status : Not Answered
 Chosen Option : --

Q.14 सही वर्तनी वाले शब्द का चयन करें।

- Ans 1. वनस्पति
 2. बनस्पती
 3. वनस्पती
 4. वनास्पती

Question ID : 65497829589
 Status : Not Answered
 Chosen Option : --

Q.15 दिये गये वाक्य में रेखांकित अश को प्रतिस्थापित करने के लिए सबसे उपयुक्त विकल्प का चयन करें।

उसे व्याकरण का अच्छा बोध है।

- Ans 1. आभास
 2. ज्ञान
 3. समझ
 4. भान

Question ID : 65497829596
 Status : Not Answered
 Chosen Option : --

Q.16 रिक्त स्थान की पूर्ति के लिए सबसे उपयुक्त विकल्प का चयन करें।

श्याम को रोगी पर _____ आ गई।

- Ans 1. दया
 2. क्षमा
 3. कृपा
 4. अनुकपा

Question ID : 65497829602
 Status : Not Answered
 Chosen Option : --

Q.17 दिए गए वाक्य का वो भाग ज्ञात करें जिसमें कोई त्रुटि है। यदि कोई त्रुटि नहीं है, तो 'कोई त्रुटि नहीं है' चुनें।

शकीला भोपाली (1)\ प्रसिद्ध कव्वाली (2)\ गायकी हैं (3)\ कोई त्रुटि नहीं है (4)

- Ans 1. 2
 2. 4
 3. 3
 4. 1

Question ID : 65497829584
 Status : Not Answered
 Chosen Option : --

Q.18 दिये गये वाक्य के किस भाग में त्रुटि है?

मैंने सारा माल उसके हाथ में बेच दिया है।

- Ans 1. मैंने सारा माल
 2. दिया है।
 3. उसके हाथ में
 4. बेच

Question ID : 65497829599
 Status : Not Answered
 Chosen Option : --

Q.19 'आग में कूदना' मुहावरे का सही अर्थ है-

- Ans 1. मूर्ख होना
 2. मदद करना
 3. जान जोखिम में डालना
 4. पश्चाताप करना

Question ID : 65497829597
 Status : Not Answered
 Chosen Option : --

Q.20 दिए गए शब्द का समानार्थी शब्द बताइए-

कोयल

- Ans 1. काक
 2. कीर
 3. शिखी
 4. कोकिला

Question ID : 65497829585

Status : Not Answered

Chosen Option : --

Comprehension:

भारतवर्ष (1) _____ है और देश में भाषाएँ चाहे जितनी भी हों, लेकिन उन सबके भीतर भारत की एक ही (2) _____ अपने को (3) _____ करती है। एक ही गङ्गा का जल है जो अनेक नदियों में बह रहा है, एक ही सूर्य का (4) _____ है जो अनेक पात्रों में जगमगा रहा है और एक ही (5) _____ है जो अनेक छदों में फूट रहा है। वेद, उपनिषद्, रामायण और महाभारत – ये ही वे घाट हैं जहाँ पर हमारी सभी भाषाएँ पानी पीती हैं।

निम्न प्रश्नों के उत्तर उपरोक्त गद्यांश के आधार पर दीजिए।

SubQuestion No : 21

Q.21 गद्यांश के रिक्त स्थान (1) के लिए सर्वाधिक उपयुक्त शब्द होगा-

- Ans 1. भिन्न
 2. एक
 3. अनेक
 4. प्रत्येक

Question ID : 65497829604

Status : Not Answered

Chosen Option : --

Comprehension:

भारतवर्ष (1) _____ है और देश में भाषाएँ चाहे जितनी भी हों, लेकिन उन सबके भीतर भारत की एक ही (2) _____ अपने को (3) _____ करती है। एक ही गङ्गा का जल है जो अनेक नदियों में बह रहा है, एक ही सूर्य का (4) _____ है जो अनेक पात्रों में जगमगा रहा है और एक ही (5) _____ है जो अनेक छदों में फूट रहा है। वेद, उपनिषद्, रामायण और महाभारत – ये ही वे घाट हैं जहाँ पर हमारी सभी भाषाएँ पानी पीती हैं।

निम्न प्रश्नों के उत्तर उपरोक्त गद्यांश के आधार पर दीजिए।

SubQuestion No : 22

Q.22 गद्यांश के रिक्त स्थान (2) के लिए सर्वाधिक उपयुक्त शब्द होगा-

- Ans 1. परमात्मा
 2. आत्मा
 3. निष्ठा
 4. प्रतिष्ठा

Question ID : 65497829605

Status : Not Answered

Chosen Option : --

Comprehension:

भारतवर्ष (1) _____ है और देश में भाषाएँ चाहे जितनी भी हो, लेकिन उन सबके भीतर भारत की एक ही (2) _____ अपने को (3) _____ करती है। एक ही गगोत्री का जल है जो अनेक नदियों में बह रहा है, एक ही सूर्य का (4) _____ है जो अनेक पात्रों में जगमगा रहा है और एक ही (5) _____ है जो अनेक छदों में फूट रहा है। वेद, उपनिषद्, रामायण और महाभारत – ये ही वे घाट हैं जहाँ पर हमारी सभी भाषाएँ पानी पीती हैं।

निम्न प्रश्नों के उत्तर उपरोक्त गद्यांश के आधार पर दीजिए।

SubQuestion No : 23

Q.23 गद्यांश के रिक्त स्थान (3) के लिए सर्वाधिक उपयुक्त शब्द होगा-

- Ans 1. सशोधित
 2. अभिव्यक्त
 3. अर्पित
 4. प्रदर्शित

Question ID : 65497829606

Status : Not Answered

Chosen Option : --

Comprehension:

भारतवर्ष (1) _____ है और देश में भाषाएँ चाहे जितनी भी हो, लेकिन उन सबके भीतर भारत की एक ही (2) _____ अपने को (3) _____ करती है। एक ही गगोत्री का जल है जो अनेक नदियों में बह रहा है, एक ही सूर्य का (4) _____ है जो अनेक पात्रों में जगमगा रहा है और एक ही (5) _____ है जो अनेक छदों में फूट रहा है। वेद, उपनिषद्, रामायण और महाभारत – ये ही वे घाट हैं जहाँ पर हमारी सभी भाषाएँ पानी पीती हैं।

निम्न प्रश्नों के उत्तर उपरोक्त गद्यांश के आधार पर दीजिए।

SubQuestion No : 24

Q.24 गद्यांश के रिक्त स्थान (4) के लिए सर्वाधिक उपयुक्त शब्द होगा-

- Ans 1. रस
 2. चित्र
 3. दर्पण
 4. बिम्ब

Question ID : 65497829607

Status : Not Answered

Chosen Option : --

Comprehension:

भारतवर्ष (1) _____ है और देश में भाषाएँ चाहे जितनी भी हो, लेकिन उन सबके भीतर भारत की एक ही (2) _____ अपने को (3) _____ करती है। एक ही गगोत्री का जल है जो अनेक नदियों में बह रहा है, एक ही सूर्य का (4) _____ है जो अनेक पात्रों में जगमगा रहा है और एक ही (5) _____ है जो अनेक छदों में फूट रहा है। वेद, उपनिषद्, रामायण और महाभारत – ये ही वे घाट हैं जहाँ पर हमारी सभी भाषाएँ पानी पीती हैं।

निम्न प्रश्नों के उत्तर उपरोक्त गद्यांश के आधार पर दीजिए।

SubQuestion No : 25

Q.25 गद्यांश के रिक्त स्थान (5) के लिए सर्वाधिक उपयुक्त शब्द होगा-

- Ans 1. भाव
 2. नाम
 3. बल
 4. अर्थ

Question ID : 65497829608

Status : Not Answered

Chosen Option : --

Exam Date	14/12/2021
Exam Time :	12:30 PM - 2:00 PM
Subject	Constable GD 2021

Section : Part A General Intelligence and Reasoning

Q.1 Nine friends, A, B, C, D, E, F, G, H, and I are sitting in a row, facing the north. A is second to the left of H. H is at the second place to the left of B. B is at the one end of the row. F is between A and H. D is between I and C. C is at the third place to the right of E. Who is at the centre of the row?

- Ans
- 1. C
 - 2. G
 - 3. A
 - 4. F

Question ID : 65497831529
 Status : Answered
 Chosen Option : 3

Q.2 Select the option in which the number-pairs share the same relationship as that shared by the given number-pair.

36 : 221

- Ans
- 1. 43 : 263
 - 2. 32 : 288
 - 3. 21 : 132
 - 4. 26 : 150

Question ID : 65497831530
 Status : Answered
 Chosen Option : 1

Q.3 In a certain code language, TATA is coded as 401202. How will TITAN be coded in that language?

- Ans
- 1. 20401982
 - 2. 20408219
 - 3. 40920128
 - 4. 40920821

Question ID : 65497831519
 Status : Answered
 Chosen Option : 3

Q.4 Three of the following four letter-clusters are alike in a certain way and one is different.
Pick the odd one out.

- Ans 1. OWL
 2. LUX
 3. GHE
 4. BJP

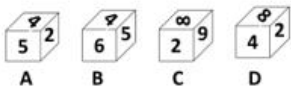
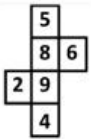
Question ID : 65497831518
 Status : Answered
 Chosen Option : 3

Q.5 Neeraj pointed at a photo of a lady and said, "She is the daughter of my paternal grandfather's only son. What is the relation of Neeraj with the lady in the photo?"

- Ans 1. Father
 2. Father-in-law
 3. Uncle
 4. Brother

Question ID : 65497831524
 Status : Answered
 Chosen Option : 4

Q.6 Select the dice that can be formed by folding the given sheet along the lines.



- Ans 1. B, C and D
 2. Only D
 3. Only C and D
 4. Only C

Question ID : 65497831532
 Status : Answered
 Chosen Option : 4

Q.7 'Oven' is related to 'Baking' in the similar way as 'knife' is related to '_____'.
 Ans 1. Grating
 2. Painting
 3. Chopping
 4. Making

Question ID : 65497831515
 Status : Answered
 Chosen Option : 3

Q.8 Five friends are standing in a line facing towards north. A Lawyer and a Judge are standing at the two extreme ends of the line. A Scientist is standing to the right of a Teacher. A Pharmacist is to the left of the Judge. The Teacher is standing between the Lawyer and the Scientist. Counting from the left, the Scientist is standing at which place?

- Ans
- 1. Fifth
 - 2. Fourth
 - 3. First
 - 4. Third

Question ID : 65497831516
 Status : Answered
 Chosen Option : 4

Q.9 Select the letter-cluster from among the given options that can replace the question mark (?) in the following series.

BHO, GMT, LRY, ?

- Ans
- 1. IOU
 - 2. DJL
 - 3. HMT
 - 4. QWD

Question ID : 65497831514
 Status : Answered
 Chosen Option : 4

Q.10 Select the figure from among the given options that can replace the question mark (?) in the following series.



- Ans
- 1.
 - 2.
 - 3.
 - 4.

Question ID : 65497831528
 Status : Answered
 Chosen Option : 2

Q.11 Select the correct option that indicates the arrangement of the given words in the order in which they appear in an English dictionary.

1. Creepy
2. Cremate
3. Creosote
4. Crescendo
5. Crescent

- Ans
- 1. 2, 5, 1, 4, 3
 - 2. 1, 2, 3, 4, 5
 - 3. 3, 5, 4, 1, 2
 - 4. 1, 3, 2, 5, 4

Question ID : 65497831525
 Status : Answered
 Chosen Option : 2

Q.12 Select the option that is embedded in the given figure (rotation is NOT allowed).



- Ans
- 1.
 - 2.
 - 3.
 - 4.

Question ID : 65497831533
 Status : Answered
 Chosen Option : 3

Q.13 In a certain code language, TEMPER is written as QBJMBO. How will POSTED be written in that language?

- Ans
- 1. MLPQBA
 - 2. MLQQCA
 - 3. MMPQCA
 - 4. MLOQBB

Question ID : 65497831534
 Status : Answered
 Chosen Option : 1

Q.14 If '÷' means 'x', '+' means '-', '-' means '÷' and 'x' means '+', then what will be the value of the following expression?

$$(11 + 5 \times 18) - 8 \div 17$$

- Ans
- 1. 52
 - 2. 51
 - 3. 53
 - 4. 55

Question ID : 65497831531
 Status : Answered
 Chosen Option : 2

Q.15 Select the correct mirror image of the given combination when the mirror is placed at PQ as shown.



- Ans
- 1. N B T P G E
 - 2. N B T P E G
 - 3. N B T P E G
 - 4. N B T P E G

Question ID : 65497831521
 Status : Answered
 Chosen Option : 2

Q.16 Select the number from among the given options that can replace the question mark (?) in the following series.

105, 102, 96, 87, 75, ?

- Ans
- 1. 60
 - 2. 55
 - 3. 45
 - 4. 35

Question ID : 65497831527
 Status : Answered
 Chosen Option : 1

Q.17 If May 27, 2007, is Sunday, what will be the day of the week on May 25, 2018?

- Ans
- 1. Friday
 - 2. Sunday
 - 3. Saturday
 - 4. Thursday

Question ID : 65497831537
 Status : Answered
 Chosen Option : 3

Q.18 Select the option that is related to the third term in the same way as the second term is related to the first term.

ROPE : VSTI :: BOSE : ?

- Ans 1. ISWF
 2. FSWI
 3. SFIW
 4. IWSF

Question ID : 65497831522
Status : Answered
Chosen Option : 2

Q.19 Read the given statement(s) and conclusions carefully. Assuming that the information given in the statements is true, even if it appears to be at variance with commonly known facts, decide which of the given conclusions logically follow(s) from the statement(s).

Statements:

All caretakers are skilled.
Some skilled are lawyers.
All skilled are painters.

Conclusions:

I. Some painters are lawyers.
II. No painter is lawyer.

- Ans 1. Only conclusion II follows.
 2. Only conclusion I follows.
 3. Both the conclusions follow.
 4. Either conclusion I or II follows.

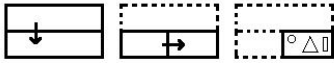
Question ID : 65497831535
Status : Answered
Chosen Option : 4

Q.20 In a certain code language, REWARI is coded as 185231189. How will SIRSA be coded in that language?

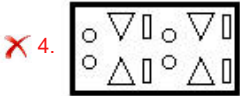
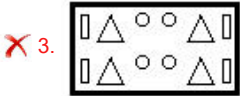
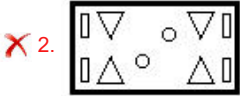
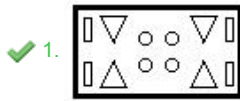
- Ans 1. 19919118
 2. 11819199
 3. 11819919
 4. 19918191

Question ID : 65497831523
Status : Answered
Chosen Option : 4

Q.21 The sequence of folding a piece of paper and the manner in which the folded paper has been cut is shown in the following figures. How would this paper look when unfolded?



Ans



Question ID : 65497831538
 Status : Answered
 Chosen Option : 1

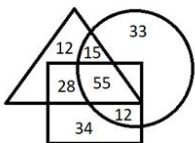
Q.22 Select the option in which the numbers are related in the same way as are the numbers of the following set.

12, 168, 7

- Ans
- ✗ 1. 18, 240, 10
 - ✗ 2. 11, 145, 17
 - ✗ 3. 15, 180, 12
 - ✓ 4. 14, 448, 16

Question ID : 65497831536
 Status : Answered
 Chosen Option : 4

Q.23 In the given Venn diagram, the rectangle represents 'people having blue eyes', the triangle represents 'people having extra fingers', and the circle represents 'people having dimples'.



The number of people who have extra fingers and blue eyes and no dimples is A and if the number of people who have extra fingers and dimples and no blue eyes is B. What is the sum of A and B?

- Ans
- ✗ 1. 70
 - ✗ 2. 40
 - ✗ 3. 67
 - ✓ 4. 43

Question ID : 65497831517
 Status : Answered
 Chosen Option : 4

Q.24 Select the number from among the given options that can replace the question mark (?) in the following series.

38, 120, 366, ?

- Ans
- 1. 1103
 - 2. 1102
 - 3. 1101
 - 4. 1104

Question ID : 65497831520
Status : Answered
Chosen Option : 4

Q.25 Select the combination of letters that when sequentially placed in the blanks of the given series will complete the series.

bi_h_h_is_ohb_sh_h

- Ans
- 1. sobhio
 - 2. sohboi
 - 3. shoboi
 - 4. shobio

Question ID : 65497831526
Status : Answered
Chosen Option : 1

Section : Part B General Knowledge and General Awareness

Q.1 In which of the following places were the fire altars of Harappan culture found?

- Ans
- 1. Padri
 - 2. Bhagatrav
 - 3. Lothal
 - 4. Manda

Question ID : 65497831547
Status : Answered
Chosen Option : 3

Q.2 Greg Barclay, the new independent chairman of the International Cricket Council, belongs to which of the following countries?

- Ans
- 1. Australia
 - 2. England
 - 3. New Zealand
 - 4. South Africa

Question ID : 65497831546
Status : Not Answered
Chosen Option : --

Q.3 In September 2021, the Cabinet Committee on Economic Affairs (CCEA) approved the highest absolute increase in Minimum Support Prices (MSP) over the previous year for lentil (masur), rapeseed and mustard at _____ per quintal for Rabi Marketing Season (RMS) 2022-23.

- Ans
- 1. ₹1,200
 - 2. ₹400
 - 3. ₹200
 - 4. ₹800

Question ID : 65497831562
Status : Answered
Chosen Option : 1

Q.4 In which of the following Indian states was the Railway Museum inaugurated in August 2020?

- Ans
- 1. Karnataka
 - 2. Punjab
 - 3. Andhra Pradesh
 - 4. New Delhi

Question ID : 65497831553
Status : Answered
Chosen Option : 4

Q.5 Which of the following bacteria helps in fixing atmospheric nitrogen?

- Ans
- 1. Clostridium
 - 2. Azotobacter
 - 3. Azospirillum
 - 4. Rhizobium

Question ID : 65497831556
Status : Answered
Chosen Option : 2

Q.6 _____ is a system of equitable distribution of water in the command area of the canal outlet.

- Ans
- 1. Flow
 - 2. Lift
 - 3. Warabandi
 - 4. Harvesting

Question ID : 65497831544
Status : Answered
Chosen Option : 3

Q.7 Which of the following state governments has announced in November 2020 that it would establish a Gau Cabinet for the protection and promotion of cows?

- Ans
- 1. Uttar Pradesh
 - 2. Bihar
 - 3. Madhya Pradesh
 - 4. Karnataka

Question ID : 65497831550
Status : Answered
Chosen Option : 1

Q.8 Which of the following pairs represent the units of energy?

- Ans 1. Joule and pascal
 2. Calorie and joule
 3. Weber and ampere
 4. Electron volt and lightyear

Question ID : 65497831551
Status : Answered
Chosen Option : 2

Q.9 Which of the following hills is NOT located in Meghalaya?

- Ans 1. Daffa Hills
 2. Jaintia Hills
 3. Khasi Hills
 4. Garo Hills

Question ID : 65497831554
Status : Answered
Chosen Option : 1

Q.10 All branches of Allahabad Bank will function as branches of _____ following the amalgamation of the two lenders as per Reserve Bank of India (RBI)'s notification dated March 28, 2020.

- Ans 1. Bank of Baroda
 2. Canara Bank
 3. Dena Bank
 4. Indian Bank

Question ID : 65497831539
Status : Not Answered
Chosen Option : --

Q.11 In which of the following states is the 'Shirui Lily Festival' celebrated?

- Ans 1. Manipur
 2. Goa
 3. Kerala
 4. Nagaland

Question ID : 65497831543
Status : Answered
Chosen Option : 1

Q.12 How many Ramsar sites exist in India as of December 2020?

- Ans 1. 39
 2. 42
 3. 41
 4. 40

Question ID : 65497831559
Status : Answered
Chosen Option : 1

Q.13 Nominal GDP is an assessment of economic production in an economy that includes _____ in its calculations.

- Ans
- 1. prices of the last 5 years
 - 2. accounts of citizens
 - 3. only services
 - 4. current prices

Question ID : **65497831561**
Status : **Not Answered**
Chosen Option : --

Q.14 How many schedules are mentioned in the Constitution of India?

- Ans
- 1. 23
 - 2. 45
 - 3. 12
 - 4. 34

Question ID : **65497831549**
Status : **Answered**
Chosen Option : **3**

Q.15 Which of the following is the main festival of the state of Mizoram?

- Ans
- 1. Saga Dawa
 - 2. Hornbill
 - 3. Chapchar Kut
 - 4. Onam

Question ID : **65497831555**
Status : **Answered**
Chosen Option : **3**

Q.16 Raja Mansingh Tomar ruled over _____.

- Ans
- 1. Jaisalmer
 - 2. Bikaner
 - 3. Mysore
 - 4. Gwalior

Question ID : **65497831563**
Status : **Answered**
Chosen Option : **4**

Q.17 Who among the following was the founder of the Chola dynasty?

- Ans
- 1. V jayalaya
 - 2. Rajendra III
 - 3. Rajaraja
 - 4. Rajendra I

Question ID : **65497831548**
Status : **Answered**
Chosen Option : **1**

Q.18 Tintu Luka is an Indian track and field athlete. In which of the following events for women is she a national record holder?

- Ans 1. 800 m race
 2. 400 m race
 3. 100 m race
 4. 200 m race

Question ID : **65497831542**
 Status : **Not Answered**
 Chosen Option : --

Q.19 Nehru Report (1928) was associated with -

- Ans 1. education reforms
 2. Surat split
 3. communal rewards
 4. constitutional framework

Question ID : **65497831552**
 Status : **Answered**
 Chosen Option : **3**

Q.20 Which of the following countries will host Asian Football Confederation's Women's Asian Cup in 2022?

- Ans 1. China
 2. Malaysia
 3. Taiwan
 4. India

Question ID : **65497831560**
 Status : **Answered**
 Chosen Option : **4**

Q.21 In which year did Maldives turn from a Sultanate to a Presidential form of the government?

- Ans 1. 1962
 2. 1947
 3. 1968
 4. 1956

Question ID : **65497831540**
 Status : **Not Answered**
 Chosen Option : --

Q.22 Who among the following foreigners won the Padma Vibhushan in 2019?

- Ans 1. John Chambers
 2. Shinzo Abe
 3. Pravin Gordhan
 4. Ismail Omar Guelleh

Question ID : **65497831558**
 Status : **Not Answered**
 Chosen Option : --

Q.23 When is World Migratory Bird Day celebrated every year?

- Ans 1. First Sunday of April and November
 2. Second Saturday of May and October
 3. Second Saturday of April and November
 4. First Sunday of May and October

Question ID : 65497831557
 Status : Not Answered
 Chosen Option : --

Q.24 In November 2020, the Union Cabinet of India approved the merger of capital-starved Lakshmi Vilas Bank (LVB) with:

- Ans 1. DBS Bank India
 2. Punjab National Bank
 3. HDFC Bank
 4. State Bank of India

Question ID : 65497831541
 Status : Answered
 Chosen Option : 1

Q.25 Who became the brand ambassador of Bengal Peerless Housing Development Company in September 2020?

- Ans 1. Sourav Ganguly
 2. Virat Kohli
 3. Smriti Mandhana
 4. MS Dhoni

Question ID : 65497831545
 Status : Answered
 Chosen Option : 1

Section : Part C Elementary Mathematics

Q.1 Reeta purchased an ornament of gold, weighing 15 grams, for ₹71820, which included GST and making charges of 12%. The original price of gold per gram (in ₹) is:

- Ans 1. 4788
 2. 4157
 3. 4572
 4. 4275

Question ID : 65497831566
 Status : Answered
 Chosen Option : 4

Q.2 Arun Kumar bought 8 pieces of TV sets at ₹24,000 each and sold all 8 pieces at a total price of ₹2,26,560. What was his profit percentage or loss percentage?

- Ans 1. Loss 18%
 2. Profit 18%
 3. Loss 16%
 4. Profit 16%

Question ID : 65497831575
 Status : Answered
 Chosen Option : 2

Q.3 The area of the base of a right circular cone is 7546 cm^2 and its height is 15 cm. The volume of the cone in cm^3 is

(Use $\pi = \frac{22}{7}$):

- Ans**
- 1. 40000
 - 2. 37730
 - 3. 36930
 - 4. 35000

Question ID : **65497831570**
 Status : **Answered**
 Chosen Option : **2**

Q.4 The side of an equilateral triangular board is 12 m. Find the cost (in ₹) of fencing the board at ₹4.50 per metre.

- Ans**
- 1. ₹162
 - 2. ₹210
 - 3. ₹198
 - 4. ₹150

Question ID : **65497831585**
 Status : **Answered**
 Chosen Option : **1**

Q.5 The compound interest on a certain sum for 16 months at 12% p.a. is ₹3494.40, interest being compounded 8-monthly. What will be the compound interest (in ₹) of the same sum at the same rate for 2 years, when the interest is compounded yearly?

- Ans**
- 1. 26342.40
 - 2. 29432.60
 - 3. 22634.20
 - 4. 24362.80

Question ID : **65497831572**
 Status : **Answered**
 Chosen Option : **1**

Q.6 If three-fifths of a number is 54, what is two-ninth of it?

- Ans**
- 1. 27
 - 2. 20
 - 3. 45
 - 4. 36

Question ID : **65497831586**
 Status : **Answered**
 Chosen Option : **2**

Q.7 The value of $(5 \div 8)$ of $(4 \div 5)$ of 25 $(15^2 - 13^2)$ is:

- Ans
- 1. 725
 - 2. 700
 - 3. 525
 - 4. 625

Question ID : 65497831577
Status : Answered
Chosen Option : 2

Q.8 A, B and C can do a work separately in 20, 35 and 60 days, respectively. They started the work together, but B and C left 8 days and 12 days, respectively, before the completion of the work. For how many days, did all three work together?

- Ans
- 1. 12
 - 2. 10
 - 3. 7
 - 4. 3

Question ID : 65497831567
Status : Answered
Chosen Option : 2

Q.9 The least number of four digits divisible by 3, 5, 7 and 9 is:

- Ans
- 1. 1045
 - 2. 1145
 - 3. 1260
 - 4. 1125

Question ID : 65497831579
Status : Answered
Chosen Option : 3

Q.10 ₹8,505 is divided among P, Q and R with their shares in the ratio of $1\frac{1}{3} : 1\frac{3}{4} : 2\frac{1}{6}$.
What is the difference of P and R's shares (in ₹)?

- Ans
- 1. 1,701
 - 2. 1,350
 - 3. 675
 - 4. 1,530

Question ID : 65497831581
Status : Answered
Chosen Option : 2

Q.11 A person crosses a 1800 m long street in 5 min. What is his speed (in km/h)?

- Ans**
- 1. 20.6
 - 2. 11.6
 - 3. 21.6
 - 4. 21

Question ID : 65497831578
Status : Answered
Chosen Option : 3

Q.12 The expenditure of Renu is 150% more than her savings. If her income increases by 20% and the savings increase by 50%, then by what percentage does her expenditure increase?

- Ans**
- 1. 12%
 - 2. 8%
 - 3. 5%
 - 4. 10%

Question ID : 65497831587
Status : Answered
Chosen Option : 2

Q.13 An article was sold for ₹1,225 after allowing a discount of 12.5%. If 9.5% discount is given, then for how much will it be sold?

- Ans**
- 1. ₹1,267
 - 2. ₹1,246
 - 3. ₹1,367
 - 4. ₹1,260

Question ID : 65497831573
Status : Answered
Chosen Option : 3

Q.14 The average of twelve numbers is 38. The average of the first three numbers is 33, that of the next four numbers is $35\frac{1}{2}$, and that of the next two numbers is 40. If the tenth number is less than the eleventh and twelfth numbers by 4 and 5, respectively, then the twelfth number is:

- Ans**
- 1. 45
 - 2. 40
 - 3. 49
 - 4. 47

Question ID : 65497831564
Status : Answered
Chosen Option : 2

Q.15 A dealer marked the price of an item 50% above the cost price. He allowed three successive discounts of 10%, 15% and 20% to a particular customer. As a result, he incurred a loss of ₹410. At what price (in ₹) did he sell the item to the said customer?

- Ans**
- 1. 4950
 - 2. 5490
 - 3. 4590
 - 4. 5940

Question ID : 65497831565
Status : Answered
Chosen Option : 3

Q.16 P takes six hours more than Q to walk 96 km, but if P doubles his speed, then he can make it in two hours less than Q. How much time (in hours) does Q require for walking 48 km?

- Ans**
- 1. 16
 - 2. 6
 - 3. 5
 - 4. 10

Question ID : 65497831568
Status : Answered
Chosen Option : 3

Q.17 A person lost 15% by selling an item for ₹5,270. If he had sold the item for ₹6,324, then what would his profit or loss percentage have been?

- Ans**
- 1. Profit, 20%
 - 2. Loss, 10%
 - 3. Profit, 12%
 - 4. Profit, 2%

Question ID : 65497831588
Status : Answered
Chosen Option : 1

Q.18 The simple interest on a certain amount is $\frac{4}{25}$ of the principal. If the numbers representing the rate of interest in per cent and time in years are equal, then find the time for which the principal is lent out.

- Ans**
- 1. 6 years
 - 2. 4 years
 - 3. 5 years
 - 4. 2 years

Question ID : 65497831584
Status : Answered
Chosen Option : 2

Q.19 A person invested ₹20,000 at a rate of 4.5% on simple interest for three years. Had the person invested ₹16,000 on compound interest at a rate of 5% for 2 years, the difference in the interests would have been:

- Ans
- 1. ₹1,200
 - 2. ₹1,060
 - 3. ₹800
 - 4. ₹1,000

Question ID : 65497831582
Status : Answered
Chosen Option : 2

Q.20 Find the value of $\frac{1}{4} \div 4\frac{2}{9}$ of $\frac{9}{19} + \left(\frac{5}{4} - \frac{3}{8}\right)$.

- Ans
- 1. 8
 - 2. 4
 - 3. 1
 - 4. 2

Question ID : 65497831574
Status : Answered
Chosen Option : 3

Q.21 Person A takes 28 hours to complete a work. Person B completes the same work in one-fourth of the time taken by A. If the two persons work together; in how much time will the work be completed?

- Ans
- 1. 5 h 36 min
 - 2. 5 h
 - 3. 5 h 30 min
 - 4. 6 h 36 min

Question ID : 65497831576
Status : Answered
Chosen Option : 1

Q.22 A sum of ₹25110 is divided between A, B, C, and D such that the ratio of shares of A and B is 8 : 9, that of B and C is 3 : 5 and that of C and D is 1 : 2. What is the difference between the shares (in ₹) of B and D?

- Ans
- 1. 6075
 - 2. 8505
 - 3. 11125
 - 4. 13150

Question ID : 65497831569
Status : Answered
Chosen Option : 2

Q.23 A student purchased a box of pencils at the rate of ₹35 for 10 pencils and sold all of them at the rate of ₹54 for 9 pencils. In this transaction, he gained ₹350. How many pencils did the box contain?

- Ans
- 1. 120
 - 2. 150
 - 3. 130
 - 4. 140

Question ID : 65497831571
Status : Answered
Chosen Option : 4

Q.24 Find the third proportional to 15 and 45.

- Ans
- 1. 125
 - 2. 145
 - 3. 165
 - 4. 135

Question ID : 65497831583
Status : Answered
Chosen Option : 4

Q.25 The difference between the average of all those numbers between 50 and 7 which are divisible by 6 and the average of all prime numbers between 10 and 45, is:

- Ans
- 1. 35.4
 - 2. 33.6
 - 3. 33.4
 - 4. 35.6

Question ID : 65497831580
Status : Not Answered
Chosen Option : --

Section : Part D English

Q.1 The following sentence has been split into four segments. Identify the segment that contains a grammatical error.

This apartment / is / nice than / that one.

- Ans
- 1. is
 - 2. This apartment
 - 3. that one
 - 4. nice than

Question ID : 65497831599
Status : Answered
Chosen Option : 4

Q.2 Select the option that can be used as a one-word substitute for the given group of words.

The system of money used in a particular country

- Ans
- 1. Valency
 - 2. Assets
 - 3. Currency
 - 4. Bullion

Question ID : 65497831606
Status : Answered
Chosen Option : 3

Q.3 Select the most appropriate option to fill in the blank.

Pahari is the most _____ spoken language in Himachal Pradesh.

- Ans
- 1. commonly
 - 2. carefully
 - 3. quickly
 - 4. strictly

Question ID : 65497831608
Status : Answered
Chosen Option : 1

Q.4 Select the option that can be used as a one-word substitute for the given group of words.

Shortened form of a word

- Ans
- 1. Punctuation
 - 2. Connotation
 - 3. Abbreviation
 - 4. Allocation

Question ID : 65497831597
Status : Answered
Chosen Option : 3

Q.5 Select the most appropriate option to fill in the blank.

Making notes will _____ you to organise your thoughts in a better way.

- Ans
- 1. capable
 - 2. enable
 - 3. disable
 - 4. adjustable

Question ID : 65497831591
Status : Answered
Chosen Option : 1

Q.6 Select the most appropriate **ANTONYM** of the given word.

Dull

- Ans** 1. Potent
 2. Charitable
 3. Keen
 4. Tender

Question ID : 65497831590
Status : Answered
Chosen Option : 1

Q.7 Select the option that can be used as a one-word substitute for the given group of words.

Sound made by ducks

- Ans** 1. Moo
 2. Caw
 3. Quack
 4. Grunt

Question ID : 65497831589
Status : Answered
Chosen Option : 3

Q.8 Select the most appropriate **ANTONYM** of the given word.

Possess

- Ans** 1. Release
 2. Maintain
 3. Obtain
 4. Occupy

Question ID : 65497831596
Status : Answered
Chosen Option : 1

Q.9 Select the most appropriate **synonym** of the given word.

Sufficient

- Ans** 1. Enough
 2. Lacking
 3. Large
 4. Deficient

Question ID : 65497831605
Status : Answered
Chosen Option : 1

Q.10 The following sentence has been split into four segments. Identify the segment that contains a grammatical error.

My friend / never tells / a lie, / doesn't he?

- Ans
- 1. a lie
 - 2. never tells
 - 3. doesn't he
 - 4. My friend

Question ID : 65497831604
Status : Answered
Chosen Option : 3

Q.11 Select the INCORRECTLY spelt word.

- Ans
- 1. Essence
 - 2. Innocence
 - 3. Conveniance
 - 4. Conveyance

Question ID : 65497831598
Status : Answered
Chosen Option : 4

Q.12 Select the most appropriate option that can substitute the underlined segment in the given sentence. If there is no need to substitute it, select 'No substitution required'.

Tourism is one in the biggest businesses in the world.

- Ans
- 1. are one in the
 - 2. No substitution required
 - 3. is one of the
 - 4. are one of the

Question ID : 65497831603
Status : Answered
Chosen Option : 3

Q.13 Select the most appropriate meaning of the given idiom.

Draw first blood

- Ans
- 1. Be the first to donate blood to help a friend
 - 2. Agree to accompany someone for the diagnosis of an illness
 - 3. Take a blood test early in the morning
 - 4. Be the first to gain an advantage or score against an opponent

Question ID : 65497831593
Status : Answered
Chosen Option : 4

Q.14 Select the most appropriate option that can substitute the underlined segment in the given sentence. If there is no need to substitute it, select 'No substitution required'.

The ostrich is an interesting bird which has wings but cannot fly.

- Ans
- 1. which is having wings but cannot fly
 - 2. No substitution required
 - 3. which have wings but cannot fly
 - 4. which has got wing but cannot fly

Question ID : 65497831592
Status : Answered
Chosen Option : 3

Q.15 Select the option that will improve the underlined part of the sentence. In case no improvement is needed, select 'No improvement required'.

My father is wishing me to give all my time to studies now.

- Ans
- 1. No improvement required
 - 2. has wished
 - 3. was wishing
 - 4. wishes

Question ID : 65497831594
Status : Answered
Chosen Option : 4

Q.16 Select the INCORRECTLY spelt word.

- Ans
- 1. Agitate
 - 2. Aggression
 - 3. Agreement
 - 4. Aggravate

Question ID : 65497831601
Status : Answered
Chosen Option : 1

Q.17 Select the most appropriate synonym of the given word.

Lethal

- Ans
- 1. Fatal
 - 2. Slothful
 - 3. Beneficial
 - 4. Lazy

Question ID : 65497831600
Status : Answered
Chosen Option : 1

Q.18 The following sentence has been split into four segments. Identify the segment that contains a grammatical error.

Fortunately, / the fire did not / caused much damage / to the building.

Ans 1. caused much damage

2. the fire did not

3. Fortunately

4. to the building

Question ID : 65497831595

Status : Answered

Chosen Option : 2

Q.19 Select the most appropriate option to fill in the blank.

The little girl tried to _____ the singer.

Ans 1. imitate

2. imply

3. languish

4. emit

Question ID : 65497831602

Status : Answered

Chosen Option : 1

Q.20 Select the most appropriate meaning of the given idiom.

Take up room

Ans 1. Use mildly

2. Rent a place

3. Occupy space

4. Feel choked

Question ID : 65497831607

Status : Answered

Chosen Option : 4

Comprehension:

In the following passage, some words have been deleted. Read the passage carefully and select the most appropriate option to fill in each blank.

His friend did not return even the next day, or the day after. For several days, the partridge (1)_____worrying, and then gave up (2)_____of his friend's return.(3)_____dusk, a hare came to the tree and (4)_____an empty hole at the foot of the tree, (5)_____shelter inside. Since the partridge had given up hope, he did not object to the hole being occupied by the hare.

SubQuestion No : 21

Q.21 Select the most appropriate option to fill in blank no. 1.

Ans 1. was

2. had

3. did

4. kept

Question ID : 65497831610

Status : Answered

Chosen Option : 1

Comprehension:

In the following passage, some words have been deleted. Read the passage carefully and select the most appropriate option to fill in each blank.

His friend did not return even the next day, or the day after. For several days, the partridge (1)_____ worrying, and then gave up (2)_____ of his friend's return.(3)_____ dusk, a hare came to the tree and (4)_____ an empty hole at the foot of the tree, (5)_____ shelter inside. Since the partridge had given up hope, he did not object to the hole being occupied by the hare.

SubQuestion No : 22

Q.22 Select the most appropriate option to fill in blank No. 2.

- Ans 1. chance
 2. trial
 3. hope
 4. risk

Question ID : 65497831611
 Status : Answered
 Chosen Option : 3

Comprehension:

In the following passage, some words have been deleted. Read the passage carefully and select the most appropriate option to fill in each blank.

His friend did not return even the next day, or the day after. For several days, the partridge (1)_____ worrying, and then gave up (2)_____ of his friend's return.(3)_____ dusk, a hare came to the tree and (4)_____ an empty hole at the foot of the tree, (5)_____ shelter inside. Since the partridge had given up hope, he did not object to the hole being occupied by the hare.

SubQuestion No : 23

Q.23 Select the most appropriate option to fill in blank No. 3.

- Ans 1. At
 2. From
 3. On
 4. Since

Question ID : 65497831612
 Status : Answered
 Chosen Option : 1

Comprehension:

In the following passage, some words have been deleted. Read the passage carefully and select the most appropriate option to fill in each blank.

His friend did not return even the next day, or the day after. For several days, the partridge (1)_____ worrying, and then gave up (2)_____ of his friend's return.(3)_____ dusk, a hare came to the tree and (4)_____ an empty hole at the foot of the tree, (5)_____ shelter inside. Since the partridge had given up hope, he did not object to the hole being occupied by the hare.

SubQuestion No : 24

Q.24 Select the most appropriate option to fill in blank No. 4.

- Ans 1. noting
 2. watching
 3. looking
 4. seeing

Question ID : 65497831613
 Status : Answered
 Chosen Option : 4

Comprehension:

In the following passage, some words have been deleted. Read the passage carefully and select the most appropriate option to fill in each blank.

His friend did not return even the next day, or the day after. For several days, the partridge (1)_____ worrying, and then gave up (2)_____ of his friend's return.(3)_____ dusk, a hare came to the tree and (4)_____ an empty hole at the foot of the tree, (5)_____ shelter inside. Since the partridge had given up hope, he did not object to the hole being occupied by the hare.

SubQuestion No : 25

Q.25 Select the most appropriate option to fill in blank No. 5.

- Ans 1. taken
 2. take
 3. took
 4. takes

Question ID : 65497831614
 Status : Answered
 Chosen Option : 3

Section : Part D Hindi

Q.1 निम्नलिखित प्रश्न में, दिए गए चार विकल्पों में से, उस विकल्प का चयन करें जो मुहावरे का अर्थ व्यक्त करता है।

'हथेली पर दही जमाना'

- Ans 1. साधारण काम समझना
 2. मात्र कल्पना करते रहना
 3. बहुत उतावली करना
 4. छीन लेना

Question ID : 65497831620
 Status : Not Answered
 Chosen Option : --

Q.2 दिए गए वाक्य का वह भाग ज्ञात करें जिसमें कोई त्रुटि है। यदि कोई त्रुटि नहीं है, तो 'कोई त्रुटि नहीं है' चुनें।

शेर की तरह दहाड़ने वाले तुम, आज भीगी बिल्ली बने हुए हो!

- Ans 1. तुम, आज भीगी बिल्ली
 2. शेर की तरह दहाड़ने वाले
 3. बने हुए हो!
 4. कोई त्रुटि नहीं है।

Question ID : 65497831621
 Status : Not Answered
 Chosen Option : --

Q.3 रिक्त स्थान को भरने के लिए सबसे उपयुक्त विकल्प का चयन करें।

गौतम बुद्ध को _____ हुआ कि ससार में दुःख व्याप्त है।

- Ans 1. बोध
 2. ज्ञान
 3. सज्ञान
 4. अनुभव

Question ID : 65497831632
 Status : Not Answered
 Chosen Option : --

Q.4 दिये गये वाक्य के किस भाग में त्रुटि है?

हमने एक सभा का सघटन किया।

- Ans
- 1. सभा का
 - 2. हमने
 - 3. एक
 - 4. सघटन किया।

Question ID : 65497831633
Status : Not Answered
Chosen Option : --

Q.5 'दामिनी' का पर्यायवाची है-

- Ans
- 1. नदिनी
 - 2. तरिणी
 - 3. सरिता
 - 4. चपला

Question ID : 65497831634
Status : Not Answered
Chosen Option : --

Q.6 रिक्त स्थान की पूर्ति के लिए सबसे उपयुक्त शब्द का चयन करें।

विराट इतना अच्छा खेल रहा है; बस किसी की _____ न लगे।

- Ans
- 1. नज़र
 - 2. दृष्टि
 - 3. खाइश
 - 4. आख

Question ID : 65497831630
Status : Not Answered
Chosen Option : --

Q.7 दिये गये वाक्यांश के लिए एक शब्द दीजिये।

आशा से अधिक

- Ans
- 1. आशा प्रतिकूल
 - 2. आशातीत
 - 3. सभावित
 - 4. आशान्वित

Question ID : 65497831629
Status : Not Answered
Chosen Option : --

Q.8 दिए गए शब्द का विलोम चुनें।

अनुयायी

- Ans 1. विरोधी
 2. आगत
 3. बाहरी
 4. निर्वात

Question ID : 65497831624

Status : Not Answered

Chosen Option : --

Q.9 दिए गए वाक्य में रेखांकित खंड को प्रतिस्थापित करने के लिए सबसे उपयुक्त विकल्प का चयन करें।
 यदि इसे प्रतिस्थापित करने की आवश्यकता नहीं है, तो विकल्प 'किसी बदलाव की आवश्यकता नहीं है'
 का चयन करें।

अब मेरे दादाजी से उठे भी नहीं जाते।

- Ans 1. उठे भी नहीं जाते।
 2. किसी बदलाव की आवश्यकता नहीं है
 3. उठा भी नहीं जाता।
 4. उठा भी नहीं जाते।

Question ID : 65497831616

Status : Not Answered

Chosen Option : --

Q.10 रिक्त स्थान को भरने के लिए सबसे उपयुक्त शब्द का चयन कीजिए।

प्रेम करना तलवार की _____ पर चलना है।

- Ans 1. धार
 2. शक्ति
 3. सिर
 4. नोक

Question ID : 65497831615

Status : Not Answered

Chosen Option : --

Q.11 दिए गए वाक्य में रेखांकित खंड को प्रतिस्थापित करने के लिए सबसे उपयुक्त विकल्प का चयन करें।
 यदि इसे प्रतिस्थापित करने की आवश्यकता नहीं है, तो विकल्प 'किसी बदलाव की आवश्यकता नहीं है'
 का चयन करें।

वह वीर सिपाही जीवन भर लड़ते रहे।

- Ans 1. लड़ता रहा
 2. लड़ता रहे
 3. किसी बदलाव की आवश्यकता नहीं है
 4. लड़ती रही

Question ID : 65497831617

Status : Not Answered

Chosen Option : --

Q.12 सही वर्तनी वाले शब्द का चयन करें।

- Ans 1. अद्वितीय
 2. अदिवियाई
 3. अद्वितया
 4. अद्वितियाई

Question ID : 65497831627
 Status : Not Answered
 Chosen Option : --

Q.13 दिये गये वाक्यांश के लिए एक शब्द दीजिये।

जो कल्पना से परे हो

- Ans 1. कल्पनात्मक
 2. कल्पनातीत
 3. काल्पनिक
 4. अकाल्पनिक

Question ID : 65497831626
 Status : Not Answered
 Chosen Option : --

Q.14 रात के समय अन्धेरा छाया रहता है।

रेखांकित शब्द के स्थान पर उचित शब्द प्रस्थापित कीजिए।

- Ans 1. दीन
 2. राँ
 3. दिन
 4. अलि

Question ID : 65497831631
 Status : Not Answered
 Chosen Option : --

Q.15 सही वर्तनी वाले शब्द का चयन करें।

- Ans 1. आर्भिव्य
 2. आर्भिर्भाव
 3. आर्बिभाव
 4. आविर्भाव

Question ID : 65497831628
 Status : Not Answered
 Chosen Option : --

Q.16 दिए गए शब्द का विलोम चुनें।

सुशील

- Ans 1. विशील
 2. अशील
 3. गतिशील
 4. दुश्शील

Question ID : 65497831622
 Status : Not Answered
 Chosen Option : --

Q.17 दिये गये वाक्यांश के लिए एक शब्द दीजिये।

जिसका अपहरण हो सके

- Ans 1. अपहार्य
 2. अपरिहार्य
 3. अपसव्य
 4. अपहारित

Question ID : 65497831623
 Status : Not Answered
 Chosen Option : --

Q.18 दिए गए शब्द का समानार्थी शब्द बताइए।

जनक

- Ans 1. जन्मदाता
 2. जानकार
 3. जड़
 4. जननी

Question ID : 65497831619
 Status : Not Answered
 Chosen Option : --

Q.19 दिए गए वाक्य का वो भाग ज्ञात करें जिसमें कोई त्रुटि है। यदि कोई त्रुटि नहीं है, तो 'कोई त्रुटि नहीं है' चुनें।

प्रतिभाशाली छात्रों ने (1) विद्यालय का नाम (2) रौशन किये (3) कोई त्रुटि नहीं है (4)

- Ans 1. 2
 2. 4
 3. 3
 4. 1

Question ID : 65497831618
 Status : Not Answered
 Chosen Option : --

Q.20 निम्नलिखित प्रश्न में, दिए गए चार विकल्पों में से, उस विकल्प का चयन करें जो मुहावरे का अर्थ व्यक्त करता है।

म्याऊँ की ठौर पकड़ना

- Ans 1. प्रकुपित होना
 2. जोखिम का कार्य करना
 3. क्रोध के आवेश में होना
 4. उत्साह हीन होना

Question ID : 65497831625
 Status : Not Answered
 Chosen Option : --

Comprehension:

दिए गए अनुच्छेद में कुछ शब्द हटा दिए गए हैं। दिए गए विकल्पों की सहायता से रिक्त स्थान भरें। प्रत्येक सख्या के लिए सबसे उपयुक्त विकल्प का चयन करें।

हमारे समाज में अनेक (1) _____ हैं। पाँच-सात वर्ष की बालिकाओं का (2) _____ साठ-सत्तर साल के (3) _____ के साथ कर दिया जाता है। दूसरी कुप्रथा (4) _____ है जिसे भारत की सरकार ने कानून के द्वारा (5) _____ घोषित कर दिया है।

SubQuestion No : 21

Q.21 गद्यांश के रिक्त स्थान (1) के लिए सर्वाधिक उपयुक्त शब्द होगा-

- Ans
- 1. सुप्रथाएँ और कुरीतियाँ
 - 2. रीतियाँ और नीतियाँ
 - 3. कुप्रथाएँ और कुरीतियाँ
 - 4. प्रथाएँ और नीतियाँ

Question ID : 65497831636

Status : Not Answered

Chosen Option : --

Comprehension:

दिए गए अनुच्छेद में कुछ शब्द हटा दिए गए हैं। दिए गए विकल्पों की सहायता से रिक्त स्थान भरें। प्रत्येक सख्या के लिए सबसे उपयुक्त विकल्प का चयन करें।

हमारे समाज में अनेक (1) _____ हैं। पाँच-सात वर्ष की बालिकाओं का (2) _____ साठ-सत्तर साल के (3) _____ के साथ कर दिया जाता है। दूसरी कुप्रथा (4) _____ है जिसे भारत की सरकार ने कानून के द्वारा (5) _____ घोषित कर दिया है।

SubQuestion No : 22

Q.22 गद्यांश के रिक्त स्थान (2) के लिए सर्वाधिक उपयुक्त शब्द होगा-

- Ans
- 1. कन्यादान
 - 2. विवाह
 - 3. बन्धन
 - 4. कर्ण-छेदन

Question ID : 65497831637

Status : Not Answered

Chosen Option : --

Comprehension:

दिए गए अनुच्छेद में कुछ शब्द हटा दिए गए हैं। दिए गए विकल्पों की सहायता से रिक्त स्थान भरें। प्रत्येक सख्या के लिए सबसे उपयुक्त विकल्प का चयन करें।

हमारे समाज में अनेक (1) _____ हैं। पाँच-सात वर्ष की बालिकाओं का (2) _____ साठ-सत्तर साल के (3) _____ के साथ कर दिया जाता है। दूसरी कुप्रथा (4) _____ है जिसे भारत की सरकार ने कानून के द्वारा (5) _____ घोषित कर दिया है।

SubQuestion No : 23

Q.23 गद्यांश के रिक्त स्थान (3) के लिए सर्वाधिक उपयुक्त शब्द होगा-

- Ans
- 1. प्रौढ़ो
 - 2. वृद्धो
 - 3. युवाओ
 - 4. बालको

Question ID : 65497831638

Status : Not Answered

Chosen Option : --

Comprehension:

दिए गए अनुच्छेद में कुछ शब्द हटा दिए गए हैं। दिए गए विकल्पों की सहायता से रिक्त स्थान भरें। प्रत्येक सख्खा के लिए सबसे उपयुक्त विकल्प का चयन करें।

हमारे समाज में अनेक (1) _____ हैं। पाँच-सात वर्ष की बालिकाओं का (2) _____ साठ-सत्तर साल के (3) _____ के साथ कर दिया जाता है। दूसरी कुप्रथा (4) _____ है जिसे भारत की सरकार ने कानून के द्वारा (5) _____ घोषित कर दिया है।

SubQuestion No : 24

Q.24 गद्यांश के रिक्त स्थान (4) के लिए सर्वाधिक उपयुक्त शब्द होगा-

- Ans
- 1. जातीयता
 - 2. विधवा विवाह
 - 3. स्वच्छता
 - 4. अस्पृश्यता

Question ID : 65497831639

Status : Not Answered

Chosen Option : --

Comprehension:

दिए गए अनुच्छेद में कुछ शब्द हटा दिए गए हैं। दिए गए विकल्पों की सहायता से रिक्त स्थान भरें। प्रत्येक सख्खा के लिए सबसे उपयुक्त विकल्प का चयन करें।

हमारे समाज में अनेक (1) _____ हैं। पाँच-सात वर्ष की बालिकाओं का (2) _____ साठ-सत्तर साल के (3) _____ के साथ कर दिया जाता है। दूसरी कुप्रथा (4) _____ है जिसे भारत की सरकार ने कानून के द्वारा (5) _____ घोषित कर दिया है।

SubQuestion No : 25

Q.25 गद्यांश के रिक्त स्थान (5) के लिए सर्वाधिक उपयुक्त शब्द होगा-

- Ans
- 1. कानूनी
 - 2. अवैध
 - 3. अस्पृश्य
 - 4. निष्प्रभावी

Question ID : 65497831640

Status : Not Answered

Chosen Option : --

Exam Date	17/11/2021
Exam Time :	9:00 AM - 10:30 AM
Subject	Constable GD 2021

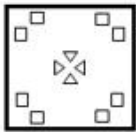
Section : Part A General Intelligence and Reasoning

Q.1 The sequence of folding a piece of paper and the manner in which the folded paper has been cut is shown in the following figures. How would this paper look when unfolded?

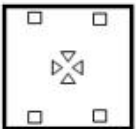


Ans

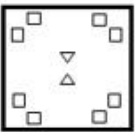
✓ 1.



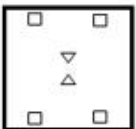
✗ 2.



✗ 3.



✗ 4.



Question ID : 65497831153
 Status : Answered
 Chosen Option : 1

Q.2 Four letter-clusters have been given, out of which three are alike in some manner and one is different. Select the letter-cluster that is different.

Ans

✗ 1. LOPK

✗ 2. EVIR

✓ 3. CXGV

✗ 4. HSLO

Question ID : 65497831133
 Status : Answered
 Chosen Option : 3

Q.3 In a certain code language, 'NOTION' is coded as '13127181213'. How will 'BEAUTIFY' be coded in that language?

- Ans 1. 2522266718212
 2. 2505016718212
 3. 2022266818222
 4. 2522268719215

Question ID : 65497831134
 Status : Answered
 Chosen Option : 1

Q.4 In a certain code language, KILOGRAM is written as LZQFNKHJ. How will AIRCRAFT be written in that language?

- Ans 1. BSHZQEZB
 2. ZHSBQZQH
 3. SEZQBQHZ
 4. SEZQHZBQ

Question ID : 65497831143
 Status : Answered
 Chosen Option : 3

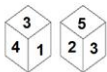
Q.5 Select the option that is related to the third term in the same way as the second term is related to the first term.

METHOD : OIZPYP :: NORMAL : ?

- Ans 1. PSXUKX
 2. PXSUXK
 3. QRYVLY
 4. PSXVLX

Question ID : 65497831142
 Status : Answered
 Chosen Option : 1

Q.6 Two different positions of the same dice are shown, the six faces of which are numbered from 1 to 6. Select the number that will be on the face opposite to the face having '6'.



- Ans 1. 1
 2. 3
 3. 4
 4. 2

Question ID : 65497831140
 Status : Answered
 Chosen Option : 1

Q.7 Read the given statements and conclusions carefully. Assuming that the information given in the statements is true, even if it appears to be at variance with commonly known facts, decide which of the given conclusions logically follow(s) from the statements.

Statements:

Some stars are planets.
Some planets are comets.

Conclusions:

I. Some comets are planets.
II. All stars are comets.

- Ans** 1. Only conclusion I follows
 2. Only conclusion II follows
 3. Both conclusions I and II follow
 4. Neither conclusion I nor II follows

Question ID : 65497831150
 Status : Answered
 Chosen Option : 4

Q.8 Select the figure from among the given options that can replace the question mark (?) in the following series.

S	T	1	S	1	U	?
V	U	V	U	V	S	

Ans

1.

S	2	T
3		1
U		V

2.

T	1	V
		2
S	3	U

3.

T	3	S
		2
V	1	U

4.

T	1	U
		2
S	3	V

Question ID : 65497831148
 Status : Answered
 Chosen Option : 4

Q.9 Select the number from among the given options that can replace the question mark (?) in the following series.

16, 9, 27, 19, 76, 67, 335, ?

- Ans
- 1. 650
 - 2. 325
 - 3. 415
 - 4. 90

Question ID : 65497831135
 Status : Answered
 Chosen Option : 4

Q.10 Select the combination of letters that when sequentially placed in the blanks of the given series will complete the series.

P_RQPS_ _P_ _Q_SR_P_RQ

- Ans
- 1. SRQSRPQS
 - 2. SRSQRPQS
 - 3. QRQSRPQS
 - 4. SQQSRPQS

Question ID : 65497831146
 Status : Answered
 Chosen Option : 1

Q.11 Select the letter-cluster from among the given options that can replace the question mark (?) in the following series.

UC, AE, GG, MI, SK, ?

- Ans
- 1. LM
 - 2. YM
 - 3. YO
 - 4. WN

Question ID : 65497831154
 Status : Answered
 Chosen Option : 2

Q.12 Select the option that is related to the third number in the same way as the second number is related to the first number and the sixth number is related to the fifth number.

16 : 256 :: 21 : ? :: 19 : 361

- Ans
- 1. 441
 - 2. 324
 - 3. 422
 - 4. 484

Question ID : 65497831138
 Status : Answered
 Chosen Option : 1

Q.13 आठ मित्र, P, Q, R, S, T, U, V और W, एक गोल मेज़ के परितः इसके केंद्र की ओर अभिमुख होकर बैठे हैं। P, R और S के बीच में है। T, W के बाईं ओर तीसरे स्थान पर है। Q, S के एकदम बाएँ बगल में है। T, S के दाईं ओर तीसरे स्थान पर है। V, U और W के बीच में है। S और W के बीच में कौन बैठा है?

- Ans
- 1. T
 - 2. P
 - 3. Q
 - 4. R

Question ID : 65497831137
Status : Answered
Chosen Option : 3

Q.14 Two years ago, T was twice as old as P. P is thrice as old as R. In five years, P will be 29. What is the present age of T?

- Ans
- 1. 42
 - 2. 48
 - 3. 44
 - 4. 46

Question ID : 65497831152
Status : Answered
Chosen Option : 2

Q.15 Select the correct mirror image of the given combination when the mirror is placed at the right side.

s x g 5 A Y

- Ans
- 1. Y A 5 p x s
 - 2. Y A 5 p x s
 - 3. Y A 5 p x s
 - 4. Y A 5 p x s

Question ID : 65497831136
Status : Answered
Chosen Option : 3

Q.16 राधा और ज्ञानेश की तीन बेटियाँ हैं - मनुजा, तारिणी और सुषमा। तारिणी की शादी जय से हुई है और सुषमा की शादी अभय से हुई है। ज्ञानेश का तीसरा दामाद अखिल है। अखिल के दो बच्चे पीयूष और रानी हैं। जय की दो बेटियाँ ऋचा और नेहा हैं। मृदुल, अभय का इकलौता बेटा है। राधा का रानी से क्या संबंध है?

- Ans
- 1. नानी
 - 2. सास
 - 3. माँ
 - 4. मौसेरी बहन

Question ID : 65497831144
Status : Answered
Chosen Option : 1

Q.17 In a certain code language, 'ABSTRACT' is written as 'IYYVDEU'. How will 'INSTINCT' be written in that language?

- Ans
- 1. QUYYNPEU
 - 2. OUYMQEU
 - 3. OUYYNQEU
 - 4. QUYPMEU

Question ID : 65497831149
Status : Answered
Chosen Option : 1

Q.18 Select the correct option that indicates the arrangement of the given words in the order in which they appear in an English dictionary.

1. Creditor
2. Creature
3. Credible
4. Creditable
5. Credentials

- Ans
- 1. 2, 5, 1, 3, 4
 - 2. 2, 5, 4, 3, 1
 - 3. 2, 5, 3, 4, 1
 - 4. 3, 5, 1, 4, 2

Question ID : 65497831145
Status : Answered
Chosen Option : 3

Q.19 Which of the given equations is correctly balanced if 'A' means '+', 'B' means '-', 'C' means 'x', and 'D' means '÷'?

- Ans
- 1. $66 B 2 D 54 C 18 = 135$
 - 2. $45 A 5 C 7 D 14 = 77$
 - 3. $45 D 5 C 7 A 14 = 77$
 - 4. $66 C 2 B 54 D 18 = 135$

Question ID : 65497831139
Status : Answered
Chosen Option : 3

Q.20 Select the number from among the given options that can replace the question mark (?) in the following series.

240, 258, 278, 300, ?

- Ans
- 1. 324
 - 2. 312
 - 3. 400
 - 4. 355

Question ID : 65497831147
Status : Answered
Chosen Option : 1

Q.21 Study the given pattern carefully and select the number that can replace the question mark (?) in it.

57 28 29
68 ? 33
72 37 35

- Ans
- 1. 34
 - 2. 33
 - 3. 35
 - 4. 29

Question ID : 65497831151
Status : Answered
Chosen Option : 2

Q.22 'Complicated' is related to 'Simple' in the same way as 'Shrink' is related to '_____'.
Ans

- 1. Expand
- 2. Execute
- 3. Shorten
- 4. Narrow

Question ID : 65497831155
Status : Answered
Chosen Option : 1

Q.23 Select the option in which the given figure is embedded (rotation is NOT allowed).



Ans




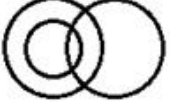
- 1.
- 2.
- 3.
- 4.

Question ID : 65497831141
Status : Answered
Chosen Option : 3

Q.24 Select the Venn diagram that correctly represents the relationship between the following classes.

Mothers, Fathers, Men

Ans

- ✗ 1. 
- ✓ 2. 
- ✗ 3. 
- ✗ 4. 

Question ID : 65497831157
Status : Answered
Chosen Option : 2

Q.25 छः मित्र A, B, C, D, E और F एक सीधी क्षैतिज पक्ति में उत्तर की ओर मुह करके बैठे हुए हैं। B, F और C के बीच में बैठा है। E, C के दाईं ओर तीसरे स्थान पर बैठा है। D, E के बाईं ओर ठीक बराबर में बैठा है। B के दाईं ओर दूसरे स्थान पर कौन बैठा है?

- Ans ✗ 1. E
- ✗ 2. F
- ✓ 3. A
- ✗ 4. D

Question ID : 65497831156
Status : Answered
Chosen Option : 4

Section : Part B General Knowledge and General Awareness

Q.1 As per an announcement made by the Chairman of ISRO on 6 September 2021, Chandrayaan-2 had completed _____ revolutions of the Moon.

- Ans ✓ 1. 9000
- ✗ 2. 12000
- ✗ 3. 15000
- ✗ 4. 11000

Question ID : 65497831180
Status : Not Answered
Chosen Option : --

Q.2 Which country is regarded as the origin of SUMO Wrestling game?

- Ans 1. Japan
 2. Vietnam
 3. Indonesia
 4. South Korea

Question ID : 65497831161
Status : Answered
Chosen Option : 1

Q.3 Who is known as the 'Father of Microeconomics'?

- Ans 1. Paul Krugman
 2. Milton Friedman
 3. James J Heckman
 4. Alfred Marshall

Question ID : 65497831178
Status : Not Answered
Chosen Option : --

Q.4 The Deputy Speaker of the Lok Sabha is removed from his office by:

- Ans 1. the order of the Vice-President of India
 2. the order of the Comptroller and Auditor-General of India
 3. a resolution of the Lok Sabha passed by a majority of all the then members of the Lok Sabha
 4. the order of the Attorney-General for India

Question ID : 65497831169
Status : Answered
Chosen Option : 3

Q.5 CNG stands for which among the following?

- Ans 1. Cardiac nerve grid
 2. Coal and natural gases
 3. Compressed natural gas
 4. Chemically neutral gene

Question ID : 65497831171
Status : Answered
Chosen Option : 3

Q.6 Till which year was Bangladesh a part of Pakistan?

- Ans 1. 1962
 2. 1974
 3. 1971
 4. 1956

Question ID : 65497831179
Status : Answered
Chosen Option : 3

Q.7 Which of the following was NOT a Mesopotamian language?

- Ans
- 1. Elamite
 - 2. Amorite
 - 3. Akkadian
 - 4. Sumerian

Question ID : 65497831177
Status : Answered
Chosen Option : 4

Q.8 Who among the following was instrumental in declaring Awadh a disturbed region requiring it to be brought under British control?

- Ans
- 1. Lord Wellesley
 - 2. Lord Dalhousie
 - 3. Lord Canning
 - 4. Lord Ripon

Question ID : 65497831173
Status : Answered
Chosen Option : 2

Q.9 How many seats did the Indian National Congress win at the Bihar Assembly Elections held during October-November, 2020?

- Ans
- 1. 22
 - 2. 15
 - 3. 10
 - 4. 19

Question ID : 65497831174
Status : Answered
Chosen Option : 4

Q.10 Which of the following is the SI base unit for photometry — the science of measuring light as perceived by the human visual system?

- Ans
- 1. Ampere
 - 2. Mole
 - 3. Candela
 - 4. Kelvin

Question ID : 65497831165
Status : Answered
Chosen Option : 3

Q.11 In which of the following cities of India is the 'Saptak Music Festival' celebrated?

- Ans
- 1. Ahmedabad
 - 2. Lucknow
 - 3. Bhopal
 - 4. Amritsar

Question ID : 65497831158
Status : Answered
Chosen Option : 4

Q.12 Who is the author of the book 'Two Lives'?

- Ans
- 1. VS Naipaul
 - 2. Arvind Adiga
 - 3. Salman Rusdie
 - 4. V kram Seth

Question ID : 65497831160
Status : Not Answered
Chosen Option : --

Q.13 In August 2021, Prime Minister Narendra Modi announced that the Rajiv Gandhi Khel Ratna Award would be renamed to _____.

- Ans
- 1. Ekalavya Khel Ratna Award
 - 2. Vijay Hazare Khel Ratna Award
 - 3. Dronacharya Khel Ratna Award
 - 4. Major Dhyan Chand Khel Ratna Award

Question ID : 65497831182
Status : Answered
Chosen Option : 4

Q.14 With reference to India's freedom movement, which Prime Minister of Great Britain announced the Communal Award in 1932?

- Ans
- 1. Neville Chamberlain
 - 2. Sir Winston Churchill
 - 3. Stanley Baldwin
 - 4. James Ramsay MacDonald

Question ID : 65497831168
Status : Not Answered
Chosen Option : --

Q.15 In which city did the freedom fighter Chandrashekhar Azad shoot himself on being besieged by the British police?

- Ans
- 1. Jabalpur
 - 2. Kanpur
 - 3. Allahabad
 - 4. Bhopal

Question ID : 65497831167
Status : Not Answered
Chosen Option : --

Q.16 The Kadam dam is located at the confluence of the Kadam river into _____.

- Ans
- 1. Sharavati
 - 2. Godavari
 - 3. Kabini
 - 4. Kaveri

Question ID : 65497831181
Status : Not Answered
Chosen Option : --

Q.17 In November 2020, WhatsApp partnered with five Indian banks to process its payment services. Which of the following banks is NOT one of the five banks in that list?

- Ans
- 1. Axis
 - 2. Bank of India
 - 3. HDFC
 - 4. Jio Payments Bank

Question ID : 65497831175
Status : Answered
Chosen Option : 4

Q.18 According to APEDA report 2020 which Indian state has the highest percentage of commercially cultivated floriculture?

- Ans
- 1. Tamil Nadu
 - 2. Maharashtra
 - 3. Karnataka
 - 4. Madhya Pradesh

Question ID : 65497831159
Status : Answered
Chosen Option : 2

Q.19 When the caterpillar is ready to enter the next stage of its life cycle called _____ it first weaves a net to hold itself.

- Ans
- 1. egg
 - 2. pupa
 - 3. late cocoon
 - 4. early cocoon

Question ID : 65497831164
Status : Answered
Chosen Option : 2

Q.20 India is ranked at the _____ place in the 'Climate Change Performance Index (CCPI) 2021', which was released on 7 December 2020.

- Ans
- 1. 10th
 - 2. 15th
 - 3. 11th
 - 4. 20th

Question ID : 65497831170
Status : Answered
Chosen Option : 1

Q.21 Who among the following was awarded the 2020 Tyler Prize for Environmental Achievement on 27 January 2020?

- Ans
- 1. Partha S Dasgupta
 - 2. Pavan Sukhdev
 - 3. Jyoti Par kh
 - 4. Madhav Gadgil

Question ID : 65497831166
Status : Not Answered
Chosen Option : --

Q.22 In which of the following states is the Yumthang Valley located?

- Ans
- 1. Uttarakhand
 - 2. Himachal Pradesh
 - 3. Nagaland
 - 4. Sikkim

Question ID : 65497831172
Status : Answered
Chosen Option : 4

Q.23 What is the ratio of money held by public in currency to that they hold in bank deposits called?

- Ans
- 1. Reserve Deposit Ratio
 - 2. Cash Reserve Ratio
 - 3. Currency Deposit Ratio
 - 4. Statutory Liquidity Ratio

Question ID : 65497831176
Status : Answered
Chosen Option : 4

Q.24 Who among the following dancers is best known for the renaissance of the 'Bharatnatyam' dance form?

- Ans
- 1. Mallika Sarabhai
 - 2. Yamini Krishnamurthy
 - 3. Rukmani Devi Arundale
 - 4. Alamel Valli

Question ID : 65497831163
Status : Answered
Chosen Option : 2

Q.25 The International Cricket Council (ICC) Board announced a minimum age policy for International cricket in November 2020. As per the policy, a player must be at least _____ to play cricket globally.

- Ans
- 1. 16 years old
 - 2. 15 years old
 - 3. 14 years old
 - 4. 13 years old

Question ID : 65497831162
Status : Answered
Chosen Option : 3

Q.1

The value of $\frac{33}{40} + \frac{1}{5} \left[\frac{4}{5} - \frac{1}{5} \times \left(\frac{7}{8} - \frac{5}{4} \right) \right] - \frac{4}{5}$ is:

Ans

- ✓ 1. $\frac{1}{5}$
 ✗ 2. $\frac{1}{4}$
 ✗ 3. $\frac{1}{7}$
 ✗ 4. $\frac{1}{3}$

Question ID : 65497831195
 Status : Answered
 Chosen Option : 1

Q.2

The value of $\frac{(251)^2 + (249)^2}{25.1 \times 25.1 - 624.99 + 24.9 \times 24.9}$ is 5×10^k , where the value of k is:

Ans

- ✓ 1. 4
 ✗ 2. 6
 ✗ 3. 3
 ✗ 4. 5

Question ID : 65497831192
 Status : Answered
 Chosen Option : 1

Q.3

A shopkeeper buys a table fan marked at ₹2,600 on 18% discount. He marked it for ₹2,800 and allows a 15% discount. How much does he earn?

Ans

- ✗ 1. ₹420
 ✗ 2. ₹200
 ✗ 3. ₹220
 ✓ 4. ₹248

Question ID : 65497831183
 Status : Answered
 Chosen Option : 4

Q.4

A can do a certain work in 15 days. B is 10% less efficient than A, and C is 20% more efficient than A. All the three work together for 3 days. The remaining work is completed by D alone in $9\frac{1}{2}$ days. D alone can complete the original work in:

Ans

- ✗ 1. 18 days
 ✗ 2. 15 days
 ✓ 3. 25 days
 ✗ 4. 20 days

Question ID : 65497831206
 Status : Not Answered
 Chosen Option : --

Q.5 Pipes A and B can empty a full tank in 15 minutes and 20 minutes, respectively, while pipe C alone can fill the empty tank in 8 minutes. If pipes A, B and C are opened together, then in how many hours will the tank be filled?

- Ans**
- 1. 2.5
 - 2. 1.5
 - 3. 2
 - 4. 3

Question ID : 65497831194
Status : Answered
Chosen Option : 3

Q.6 A factory requires 56 machines to manufacture a given number of articles in 144 days. How many machines will be required to produce the same number of articles in 96 days?

- Ans**
- 1. 63
 - 2. 84
 - 3. 77
 - 4. 81

Question ID : 65497831190
Status : Answered
Chosen Option : 2

Q.7 The average height of 20 students of class 8 is 152 cm and the average height of 15 students of class 9 is 168 cm. What is the average height (to the nearest cm) of the students of both classes?

- Ans**
- 1. 159
 - 2. 160
 - 3. 157
 - 4. 158

Question ID : 65497831189
Status : Answered
Chosen Option : 1

Q.8 A sum of ₹73,500 is divided among A, B, C and D in the ratio 3 : 7 : 9 : 11, respectively. What is the sum of the shares of A and D?

- Ans**
- 1. ₹34,300
 - 2. ₹39,200
 - 3. ₹24,500
 - 4. ₹29,400

Question ID : 65497831184
Status : Answered
Chosen Option : 1

Q.9 Five years ago, the average age of A, B and C was 20 years. Six years ago, the average age of B and C was 9 years. What will be the age (in years) of A 3 years from now?

- Ans**
- 1. 41
 - 2. 48
 - 3. 45
 - 4. 47

Question ID : **65497831203**
 Status : **Answered**
 Chosen Option : **2**

Q.10 The difference between the height and the radius of a solid cylinder is 23 cm. The total surface area of the cylinder is 1628 cm^2 . The height and the radius of the cylinder, respectively, are (take $\pi = \frac{22}{7}$):

- Ans**
- 1. 33 cm, 10 cm
 - 2. 30 cm, 7 cm
 - 3. 32 cm, 09 cm
 - 4. 28 cm, 5 cm

Question ID : **65497831201**
 Status : **Not Answered**
 Chosen Option : --

Q.11 The number of years taken for a sum of ₹5,000 to become ₹5,832 at a rate of 16 % per annum compounded half yearly, will be:

- Ans**
- 1. 1.5 years
 - 2. $\frac{1}{2}$ year
 - 3. 2 years
 - 4. 1 year

Question ID : **65497831200**
 Status : **Answered**
 Chosen Option : **4**

Q.12 If 25% of x is 40 less than 30% of $(x + 60)$, then 35% of $(x - 40)$ is what percentage more than 120?

- Ans**
- 1. $16\frac{2}{3}\%$
 - 2. 20%
 - 3. $12\frac{1}{2}\%$
 - 4. 25%

Question ID : **65497831205**
 Status : **Not Answered**
 Chosen Option : --

Q.13 What is the least number added to 2483 so that it is completely divisible by 3, 4, 5 and 6?

- Ans
- 1. 37
 - 2. 23
 - 3. 22
 - 4. 30

Question ID : 65497831197
Status : Answered
Chosen Option : 1

Q.14 How many minutes will Radha take to cover a distance of 1950 m, if she runs at a speed of 26 km/h?

- Ans
- 1. $7\frac{1}{2}$ minutes
 - 2. $4\frac{1}{2}$ minutes
 - 3. $3\frac{1}{2}$ minutes
 - 4. $5\frac{1}{2}$ minutes

Question ID : 65497831196
Status : Answered
Chosen Option : 2

Q.15 Two numbers are in the ratio 9 : 11. If their HCF is 23, then the difference of the two numbers is:

- Ans
- 1. 46
 - 2. 146
 - 3. 56
 - 4. 253

Question ID : 65497831188
Status : Answered
Chosen Option : 1

Q.16 A certain sum of money doubles itself in 6 years. How much time (in years) will it take to become five times of itself at the same rate?

- Ans
- 1. 30
 - 2. 24
 - 3. 35
 - 4. 28

Question ID : 65497831191
Status : Answered
Chosen Option : 1

Q.17 A train can cross a tunnel of length 600 m in 54 seconds, and it can cross a 350 m long bridge in 36 seconds. Which of the following statements is/are correct?

- (i) The speed of the train is 60 km/h.
- (ii) The length of the train is 150 m.

Ans 1. Only statement (ii)

2. Only statement (i)

3. Neither statement (i) nor (ii)

4. Both statements (i) and (ii)

Question ID : 65497831207

Status : Not Answered

Chosen Option : --

Q.18 A man bought two mobiles phones for ₹50,000. He sold one of them at a profit of 15% and the other at a loss of 20%. If the selling price of each mobile is the same, what is the approximate cost price (to the nearest rupee) of the mobile that was sold at a loss?

Ans 1. 27,368

2. 25,465

3. 29,487

4. 20,513

Question ID : 65497831186

Status : Not Answered

Chosen Option : --

Q.19 A man lent out ₹14,000 at 5% and ₹19,000 at 6% simple interest per annum. His total income (in ₹) from the interest in 3 years is:

Ans 1. 3,420

2. 2,100

3. 5,445

4. 5,520

Question ID : 65497831187

Status : Answered

Chosen Option : 4

Q.20 If X is 12.25% more than Y, then Y is approximately _____ less than X.

Ans 1. 3%

2. 10.9%

3. 12%

4. 15.6%

Question ID : 65497831198

Status : Not Answered

Chosen Option : --

Q.21 Raghu bought some pens at the rate of 12 for ₹100 and an equal number of pens at 15 for ₹135. How many pens should he sell for ₹260, so as to make a profit of 20%?

- Ans**
- 1. 20
 - 2. 30
 - 3. 24
 - 4. 25

Question ID : 65497831202
Status : Not Answered
Chosen Option : --

Q.22 A person bought a rectangular piece of land whose length and breadth are in the ratio 7 : 5. If the cost of fencing the land is ₹2,880 at the rate of ₹15/m, then what is the length of the land?

- Ans**
- 1. 56 m
 - 2. 40 m
 - 3. 60 m
 - 4. 84 m

Question ID : 65497831185
Status : Not Answered
Chosen Option : --

Q.23 The ages of two persons P and Q are in the ratio 5 : 7. Eight years ago, the ratio of P and Q was 7 : 13. The present ages of P and Q, respectively, are:

- Ans**
- 1. 15 and 21 years
 - 2. 20 and 28 years
 - 3. 21 and 15 years
 - 4. 12 and 13 years

Question ID : 65497831199
Status : Answered
Chosen Option : 1

Q.24 By selling an article for ₹1800, triple the profit is obtained than the profit that would have been obtained by selling it for ₹1350. The cost price (in ₹) of the article is:

- Ans**
- 1. 1200
 - 2. 1125
 - 3. 1250
 - 4. 1175

Question ID : 65497831193
Status : Answered
Chosen Option : 1

Q.25 The marked price of an article is ₹550. It is sold for ₹317.90, after giving three successive discounts of 15%, $x\%$ and 20% on its marked price. If it is sold by giving a single discount of $2x\%$, then its selling price (in ₹) will be:

- Ans
- 1. 440
 - 2. 385
 - 3. 495
 - 4. 484

Question ID : 65497831204
 Status : Not Answered
 Chosen Option : --

Section : Part D English

Q.1 The following sentence has been split into four segments. Identify the segment that contains a grammatical error.

The report said that / people who are eat meat / are at a higher risk / of fractures.

- Ans
- 1. are at a higher risk
 - 2. people who are eat meat
 - 3. of fractures
 - 4. The report said that

Question ID : 65497831214
 Status : Answered
 Chosen Option : 2

Q.2 Select the most appropriate synonym of the given word.

Imperial

- Ans
- 1. Paternal
 - 2. Sovereign
 - 3. God-fearing
 - 4. Ancestral

Question ID : 65497831223
 Status : Answered
 Chosen Option : 4

Q.3 Parts of the given sentence have been given as options. One of them contains a grammatical error. Select the option that has the error.

I am sure that Vasu is not going to returned the money that he owes you.

- Ans
- 1. returned
 - 2. I am sure
 - 3. he owes you
 - 4. not going to

Question ID : 65497831222
 Status : Answered
 Chosen Option : 1

Q.4 Select the correctly spelt word.

- Ans 1. Continuosly
 2. Contenuously
 3. Continuously
 4. Contenewosly

Question ID : 65497831211
Status : Answered
Chosen Option : 1

Q.5 Select the most appropriate option to fill in the blank.

From these findings, we can _____ that the rate of crime is increasing in the city.

- Ans 1. presuppose
 2. infer
 3. summarise
 4. presume

Question ID : 65497831225
Status : Answered
Chosen Option : 4

Q.6 Select the most appropriate meaning of the given idiom.

Down in the dumps

- Ans 1. In a high spirit
 2. In a depressed state of mind
 3. In a state of fury
 4. In a very happy mood

Question ID : 65497831221
Status : Answered
Chosen Option : 2

Q.7 Select the most appropriate synonym of the given word.

Monotonous

- Ans 1. Modified
 2. Varied
 3. Boring
 4. Fluctuated

Question ID : 65497831216
Status : Answered
Chosen Option : 3

Q.8 The following sentence has been split into four segments. Identify the segment that contains a grammatical error.

Angad says that / he follows / his exercise regimen strictly / and that helping to him stay fit.

- Ans
- 1. his exercise regimen strictly
 - 2. Angad says that
 - 3. he follows
 - 4. and that helping to him stay fit

Question ID : 65497831215
Status : Answered
Chosen Option : 4

Q.9 Select the option that can be used as a one-word substitute for the given group of words.

Delay an event to a later date or time

- Ans
- 1. Postpone
 - 2. Prepone
 - 3. Preserve
 - 4. Persevere

Question ID : 65497831220
Status : Answered
Chosen Option : 1

Q.10 Select the most appropriate option to fill in the blank.

The shops at the Indian airports have to _____ prices in Indian rupees.

- Ans
- 1. display
 - 2. convert
 - 3. trace
 - 4. tag

Question ID : 65497831208
Status : Answered
Chosen Option : 1

Q.11 Select the most appropriate option that can substitute the underlined segment in the given sentence. If there is no need to substitute it, select 'No substitution required'.

If she likes the scenery, she will paint it.

- Ans
- 1. No substitution required
 - 2. If she like
 - 3. If she had liked
 - 4. If she is liking

Question ID : 65497831209
Status : Answered
Chosen Option : 1

Q.12 Select the most appropriate option to fill in the blank.

Besides having a good academic record, it is important that you learn how to face an interview with _____ and self-confidence.

- Ans
- 1. counsel
 - 2. ease
 - 3. experience
 - 4. adaptation

Question ID : 65497831212
Status : Answered
Chosen Option : 2

Q.13 Select the most appropriate option that can substitute the underlined word in the given sentence.

He became the first Indian to be invited to perform at the advantageous Maple Theatre in Canada.

- Ans
- 1. prestigious
 - 2. inauspicious
 - 3. heterogeneous
 - 4. multifarious

Question ID : 65497831213
Status : Answered
Chosen Option : 1

Q.14 Select the most appropriate ANTONYM of the given word.

Enthusiasm

- Ans
- 1. Excitement
 - 2. Lethargy
 - 3. Passion
 - 4. Devotion

Question ID : 65497831226
Status : Answered
Chosen Option : 2

Q.15 Select the most appropriate meaning of the given idiom.

To get out of hand

- Ans
- 1. To lose courage
 - 2. To act irresponsibly
 - 3. To become uncontrollable
 - 4. To be indecisive

Question ID : 65497831210
Status : Answered
Chosen Option : 3

Q.16 Select the option that will improve the underlined part of the given sentence. In case no improvement is needed, select 'No improvement required'.

I have never see anything like this before.

- Ans
- 1. never saw anything
 - 2. never seen anything
 - 3. never saw something
 - 4. No improvement required

Question ID : 65497831227
Status : Answered
Chosen Option : 2

Q.17 Select the INCORRECTLY spelt word.

- Ans
- 1. Sensible
 - 2. Campatable
 - 3. Accessible
 - 4. Feasible

Question ID : 65497831219
Status : Answered
Chosen Option : 2

Q.18 Select the option that can be used as a one-word substitute for the given group of words.

An outgoing, socially confident person

- Ans
- 1. Extrovert
 - 2. Introvert
 - 3. Brooder
 - 4. Solitary

Question ID : 65497831224
Status : Answered
Chosen Option : 1

Q.19 Select the most appropriate ANTONYM of the given word.

Deny

- Ans
- 1. Block
 - 2. Prevent
 - 3. Accept
 - 4. Check

Question ID : 65497831217
Status : Answered
Chosen Option : 3

Q.20 Select the option that can be used as a one-word substitute for the given group of words.

A study of the human body

- Ans 1. Philanthropy
 2. Pathology
 3. Physiology
 4. Philology

Question ID : 65497831218

Status : Answered

Chosen Option : 3

Comprehension:

In the following passage, some words have been deleted. Read the passage carefully and select the most appropriate option to fill in each blank.

Few people lived near the North Pole. A small Inuit community had settled the closest, (1) _____ for the most part the region remained isolated (2) _____ the rest of the world for centuries. A few (3) _____ explorers like Henry Hudson and James Cook (4) _____ to navigate the region in search of a sea (5) _____ to connect the Atlantic and Pacific Oceans in the waters above North America.

SubQuestion No : 21

Q.21 Select the most appropriate option to fill in blank no. 1.

- Ans 1. so
 2. because
 3. or
 4. but

Question ID : 65497831229

Status : Answered

Chosen Option : 4

Comprehension:

In the following passage, some words have been deleted. Read the passage carefully and select the most appropriate option to fill in each blank.

Few people lived near the North Pole. A small Inuit community had settled the closest, (1) _____ for the most part the region remained isolated (2) _____ the rest of the world for centuries. A few (3) _____ explorers like Henry Hudson and James Cook (4) _____ to navigate the region in search of a sea (5) _____ to connect the Atlantic and Pacific Oceans in the waters above North America.

SubQuestion No : 22

Q.22 Select the most appropriate option to fill in blank no. 2.

- Ans 1. by
 2. with
 3. of
 4. from

Question ID : 65497831230

Status : Answered

Chosen Option : 4

Comprehension:

In the following passage, some words have been deleted. Read the passage carefully and select the most appropriate option to fill in each blank.

Few people lived near the North Pole. A small Inuit community had settled the closest, (1) _____ for the most part the region remained isolated (2) _____ the rest of the world for centuries. A few (3) _____ explorers like Henry Hudson and James Cook (4) _____ to navigate the region in search of a sea (5) _____ to connect the Atlantic and Pacific Oceans in the waters above North America.

SubQuestion No : 23

Q.23 Select the most appropriate option to fill in blank no. 3.

- Ans 1. strong
 2. powerful
 3. daring
 4. thoughtful

Question ID : 65497831231

Status : Answered

Chosen Option : 3

Comprehension:

In the following passage, some words have been deleted. Read the passage carefully and select the most appropriate option to fill in each blank.

Few people lived near the North Pole. A small Inuit community had settled the closest, (1) _____ for the most part the region remained isolated (2) _____ the rest of the world for centuries. A few (3) _____ explorers like Henry Hudson and James Cook (4) _____ to navigate the region in search of a sea (5) _____ to connect the Atlantic and Pacific Oceans in the waters above North America.

SubQuestion No : 24

Q.24 Select the most appropriate option to fill in blank no. 4.

- Ans 1. tried
 2. trying
 3. try
 4. had tried

Question ID : 65497831232

Status : Answered

Chosen Option : 4

Comprehension:

In the following passage, some words have been deleted. Read the passage carefully and select the most appropriate option to fill in each blank.

Few people lived near the North Pole. A small Inuit community had settled the closest, (1) _____ for the most part the region remained isolated (2) _____ the rest of the world for centuries. A few (3) _____ explorers like Henry Hudson and James Cook (4) _____ to navigate the region in search of a sea (5) _____ to connect the Atlantic and Pacific Oceans in the waters above North America.

SubQuestion No : 25

Q.25 Select the most appropriate option to fill in blank no. 5.

- Ans 1. track
 2. route
 3. path
 4. road

Question ID : 65497831233

Status : Answered

Chosen Option : 2

Q.1 निम्नलिखित में से अशुद्ध वर्तनी वाले शब्द को पहचानिए-

- Ans 1. दशहरा
 2. डारधिची
 3. ताज्जुब
 4. ज्योतिषी

Question ID : 65497831238
 Status : Not Answered
 Chosen Option : --

Q.2 'ठीक परिणाम देने वाला' वाक्यांश के लिए उपयुक्त शब्द होगा-

- Ans 1. सुखदायी
 2. फलदायी
 3. सुखात
 4. फलक

Question ID : 65497831253
 Status : Not Answered
 Chosen Option : --

Q.3 रिक्त स्थान की पूर्ति के लिए सबसे उपयुक्त शब्द का चयन करें।

आज इस साल का पहला तूफान _____।

- Ans 1. आया
 2. चला
 3. नाचा
 4. उठा

Question ID : 65497831247
 Status : Not Answered
 Chosen Option : --

Q.4 'काँटो पर लोटना' इस मुहावरे का उचित अर्थ किस विकल्प में है?

- Ans 1. बाधा दूर होना
 2. बेचैन होना
 3. अडचनें पैदा करना
 4. सकट में डालना

Question ID : 65497831235
 Status : Not Answered
 Chosen Option : --

Q.5 रिक्त स्थान की पूर्ति के लिए सबसे उपयुक्त शब्द का चयन करें।

इस _____ घर-घर में यही दशा है।

- Ans 1. गाव तक
 2. गाव के
 3. गाव की
 4. गाव में

Question ID : 65497831246
 Status : Not Answered
 Chosen Option : --

Q.6 उस विकल्प का चयन कीजिए जो नीचे दिए गये मुहावरे का अर्थ व्यक्त करता है-

आपे में आना

- Ans
- 1. बेहोश हो जाना
 - 2. बहुत गुस्से में आना
 - 3. होश में आना
 - 4. काबू में न रहना

Question ID : 65497831244

Status : Not Answered

Chosen Option : --

Q.7 दिए गए शब्द के विलोम शब्द का चयन करें।

आसक्त

- Ans
- 1. सक्त
 - 2. विरक्त
 - 3. विस्तृत
 - 4. अनासक्त

Question ID : 65497831241

Status : Not Answered

Chosen Option : --

Q.8 दिए गए वाक्य में रेखांकित खंड को प्रतिस्थापित करने के लिए सबसे उपयुक्त विकल्प का चयन करें।
यदि इसे प्रतिस्थापित करने की आवश्यकता नहीं है, तो विकल्प 'किसी बदलाव की आवश्यकता नहीं है'
का चयन करें।

जनता के अदर असतोष फैल गया।

- Ans
- 1. के पास
 - 2. किसी बदलाव की आवश्यकता नहीं है।
 - 3. जनता में
 - 4. के भीतर

Question ID : 65497831234

Status : Not Answered

Chosen Option : --

Q.9 दिए गए वाक्य का वह भाग ज्ञात करें जिसमें कोई त्रुटि है। यदि कोई त्रुटि नहीं है, तो 'कोई त्रुटि नहीं है'
विकल्प को चुनें।

शिक्षक ने उन छात्रों को पूछा।

- Ans
- 1. पूछा
 - 2. कोई त्रुटि नहीं है
 - 3. उन छात्रों को
 - 4. शिक्षक ने

Question ID : 65497831240

Status : Not Answered

Chosen Option : --

Q.10 जिसके दस आनन है - वाक्याश के लिए एक शब्द लिखिए।

- Ans
- 1. राम
 - 2. कबीर
 - 3. दशानन
 - 4. कवि दिनकर

Question ID : 65497831242
Status : Not Answered
Chosen Option : --

Q.11 दिए गये वाक्याश के लिए एक शब्द दीजिये-

बिना वेतन के काम करने वाला

- Ans
- 1. अवैतनिक
 - 2. वैतनिक
 - 3. भुगतानविहीन
 - 4. अपेय

Question ID : 65497831245
Status : Not Answered
Chosen Option : --

Q.12 निम्नलिखित में से शुद्ध वर्तनी वाले शब्द को पहचानिए-

- Ans
- 1. बिकारी
 - 2. ओषधी
 - 3. सच्च
 - 4. कारीगर

Question ID : 65497831239
Status : Not Answered
Chosen Option : --

Q.13 दिए गए शब्द के समानार्थी का चयन करें।

कोयल

- Ans
- 1. मुरारी
 - 2. वसतद्रूत
 - 3. श्वान
 - 4. अन्ग

Question ID : 65497831237
Status : Not Answered
Chosen Option : --

Q.14 दिये गये वाक्य के किस भाग में त्रुटि है?

पिताजी मेरे परीक्षाफल से सतुष्ट नहीं हुए।

- Ans
- 1. सतुष्ट
 - 2. परीक्षाफल से
 - 3. नहीं हुए।
 - 4. पिताजी मेरे

Question ID : 65497831250
Status : Not Answered
Chosen Option : --

Q.15 दिये गये वाक्य में रेखांकित अश को प्रतिस्थापित करने के लिए सबसे उपयुक्त विकल्प का चयन करें।

कर्मचारी अपना वेतन नहीं पा पाया।

- Ans
- 1. दे पाया।
 - 2. भर पाया।
 - 3. कर पाया।
 - 4. ले पाया।

Question ID : 65497831252

Status : Not Answered

Chosen Option : --

Q.16 दिए गए वाक्य में रेखांकित खड को प्रतिस्थापित करने के लिए सबसे उपयुक्त विकल्प का चयन करें।
यदि इसे प्रतिस्थापित करने की आवश्यकता नहीं है, तो विकल्प 'किसी बदलाव की आवश्यकता नहीं है'
का चयन करें।

मैं गाने का कसरत कर रहा हूँ।

- Ans
- 1. समर्पण कर रहा हूँ
 - 2. व्यायाम कर रहा हूँ
 - 3. किसी बदलाव की आवश्यकता नहीं है।
 - 4. अभ्यास कर रहा हूँ

Question ID : 65497831249

Status : Not Answered

Chosen Option : --

Q.17 रिक्त स्थान की पूर्ति के लिए सबसे उपयुक्त शब्द का चयन करें।

बारिश की बूदें _____ रही हैं।

- Ans
- 1. टपक
 - 2. रिस
 - 3. बरस
 - 4. गीर

Question ID : 65497831248

Status : Not Answered

Chosen Option : --

Q.18 दिए गए वाक्य का वह भाग ज्ञात करें जिसमें कोई त्रुटि है। यदि कोई त्रुटि नहीं है, तो 'कोई त्रुटि नहीं है'
विकल्प को चुनें।

रमादेवी एक विद्वान महिला थीं।

- Ans
- 1. एक विद्वान
 - 2. रमादेवी
 - 3. कोई त्रुटि नहीं है
 - 4. महिला थी

Question ID : 65497831236

Status : Not Answered

Chosen Option : --

Q.19 दिए गए शब्द के विलोम शब्द का चयन करें-

स्वल्पायु

- Ans 1. चिरायु
 2. अल्पायु
 3. अवस्था
 4. दीर्घ

Question ID : 65497831243
 Status : Not Answered
 Chosen Option : --

Q.20 'नलिन' किसका पर्यायवाची है?

- Ans 1. जल
 2. कमल
 3. स्वर्ग
 4. कपड़ा

Question ID : 65497831251
 Status : Not Answered
 Chosen Option : --

Comprehension:

नीचे दिए गए गद्यांश में से कुछ शब्द हटा दिए गए हैं। संबंधित प्रश्नों में प्रत्येक सख्खा के लिए सबसे उपयुक्त विकल्प का चयन करें।

(1) _____ को सबल बनाने के लिए हमें नियमित (2) _____ करना चाहिए। सुदूर (3) _____ के लिए हमें खेलना, दौड़ना, चलना, कूदना और (4) _____ चाहिए। अतएव हम सभी को विद्यालयों में होनेवाले (5) _____ में भाग लेना चाहिए।

SubQuestion No : 21

Q.21 गद्यांश के रिक्त स्थान (1) के लिए सर्वाधिक उपयुक्त शब्द होगा-

- Ans 1. काम
 2. शरीर
 3. परिवार
 4. हृदय

Question ID : 65497831255
 Status : Not Answered
 Chosen Option : --

Comprehension:

नीचे दिए गए गद्यांश में से कुछ शब्द हटा दिए गए हैं। संबंधित प्रश्नों में प्रत्येक सख्खा के लिए सबसे उपयुक्त विकल्प का चयन करें।

(1) _____ को सबल बनाने के लिए हमें नियमित (2) _____ करना चाहिए। सुदूर (3) _____ के लिए हमें खेलना, दौड़ना, चलना, कूदना और (4) _____ चाहिए। अतएव हम सभी को विद्यालयों में होनेवाले (5) _____ में भाग लेना चाहिए।

SubQuestion No : 22

Q.22 गद्यांश के रिक्त स्थान (2) के लिए सर्वाधिक उपयुक्त शब्द होगा-

- Ans 1. भाषण करना
 2. शोना
 3. खाना
 4. व्यायाम

Question ID : 65497831256
 Status : Not Answered
 Chosen Option : --

Comprehension:

नीचे दिए गए गद्यांश में से कुछ शब्द हटा दिए गए हैं। संबंधित प्रश्नों में प्रत्येक सख्खा के लिए सबसे उपयुक्त विकल्प का चयन करें।

(1) _____ को सबल बनाने के लिए हमें नियमित (2) _____ करना चाहिए। सुदूर (3) _____ के लिए हमें खेलना, दौड़ना, चलना, कूदना और (4) _____ चाहिए। अतएव हम सभी को विद्यालयों में होनेवाले (5) _____ में भाग लेना चाहिए।

SubQuestion No : 23

Q.23 गद्यांश के रिक्त स्थान (3) के लिए सर्वाधिक उपयुक्त शब्द होगा-

- Ans
- 1. कार्य
 - 2. व्यवहार
 - 3. स्वास्थ्य
 - 4. वेश-भूषा

Question ID : 65497831257

Status : Not Answered

Chosen Option : --

Comprehension:

नीचे दिए गए गद्यांश में से कुछ शब्द हटा दिए गए हैं। संबंधित प्रश्नों में प्रत्येक सख्खा के लिए सबसे उपयुक्त विकल्प का चयन करें।

(1) _____ को सबल बनाने के लिए हमें नियमित (2) _____ करना चाहिए। सुदूर (3) _____ के लिए हमें खेलना, दौड़ना, चलना, कूदना और (4) _____ चाहिए। अतएव हम सभी को विद्यालयों में होनेवाले (5) _____ में भाग लेना चाहिए।

SubQuestion No : 24

Q.24 गद्यांश के रिक्त स्थान (4) के लिए सर्वाधिक उपयुक्त शब्द होगा-

- Ans
- 1. पढ़ना
 - 2. टहलना
 - 3. गीत गाना
 - 4. रोना

Question ID : 65497831258

Status : Not Answered

Chosen Option : --

Comprehension:

नीचे दिए गए गद्यांश में से कुछ शब्द हटा दिए गए हैं। संबंधित प्रश्नों में प्रत्येक सख्खा के लिए सबसे उपयुक्त विकल्प का चयन करें।

(1) _____ को सबल बनाने के लिए हमें नियमित (2) _____ करना चाहिए। सुदूर (3) _____ के लिए हमें खेलना, दौड़ना, चलना, कूदना और (4) _____ चाहिए। अतएव हम सभी को विद्यालयों में होनेवाले (5) _____ में भाग लेना चाहिए।

SubQuestion No : 25

Q.25 गद्यांश के रिक्त स्थान (5) के लिए सर्वाधिक उपयुक्त शब्द होगा-

- Ans
- 1. बातचीत में
 - 2. कसरत
 - 3. खेलों
 - 4. मजाक

Question ID : 65497831259

Status : Not Answered

Chosen Option : --

Constable GD in CAPFs NIA SSF and Rifleman GD in Assam Rifles Examination 2021

Roll Number	
Candidate Name	
Venue Name	Indian Institute Of Computer Education - CENTER 2
Exam Date	18/11/2021
Exam Time :	4:00 PM - 5:30 PM
Subject	Constable GD 2021

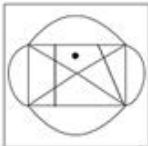
Section : Part A General Intelligence and Reasoning

Q.1 Select the option in which the given figure is embedded (rotation is NOT allowed).

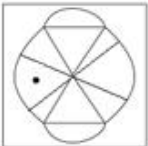


Ans

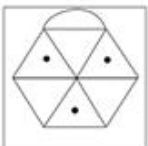
✗ 1.



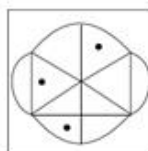
✗ 2.



✗ 3.



✓ 4.



Question ID : 65497832788

Status : Answered

Chosen Option : 4

Q.2 Study the given pattern carefully and select the number that can replace the question mark (?) in it.

64 12 27
216 ? 343
512 40 125

- Ans
- 1. 64
 - 2. 72
 - 3. 42
 - 4. 95

Question ID : 65497832795
Status : Answered
Chosen Option : 3

Q.3 Two different positions of the same dice marked with the numbers I, II, III, IV, V and VI are shown. Select the number that will be on the face opposite to the face having the number 'IV'.



- Ans
- 1. III
 - 2. II
 - 3. V
 - 4. VI

Question ID : 65497832787
Status : Answered
Chosen Option : 1

Q.4 In a certain code language, 'SLAM' is coded as '5736339', and 'TOY' is coded as '604575'. How will 'CLEAR' be coded in that language?

- Ans
- 1. 93612651
 - 2. 93618357
 - 3. 93615354
 - 4. 63915354

Question ID : 65497832806
Status : Answered
Chosen Option : 3

Q.5 Select the letter-cluster from among the given options that can replace the question mark (?) in the following series.

UKT, PFO, KAJ, ?

- Ans
- 1. GHM
 - 2. FVE
 - 3. EVO
 - 4. FEQ

Question ID : 65497832798
Status : Answered
Chosen Option : 2

Q.6 Rohit donates 15% of his monthly income to charity funds. The remaining income is spent in the following manner: 35% on food, 20% on rent, 17% on bills, 8% on clothing, and the remaining is kept as savings. If the amount saved each month is ₹14,620, then what is Rohit's monthly income?

- Ans**
- 1. ₹86,000
 - 2. ₹75,300
 - 3. ₹82,000
 - 4. ₹73,100

Question ID : 65497832796
 Status : Answered
 Chosen Option : 1

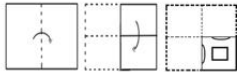
Q.7 In an imaginary mathematical system, symbol '-' stands for addition, symbol '+' stands for division, symbol 'x' stands for subtraction, and symbol '÷' stands for multiplication. What is the value of the following expression?

$$144 \times 35 + 7 \div 12 - 3$$

- Ans**
- 1. 107
 - 2. 43
 - 3. 87
 - 4. 95

Question ID : 65497832786
 Status : Answered
 Chosen Option : 3

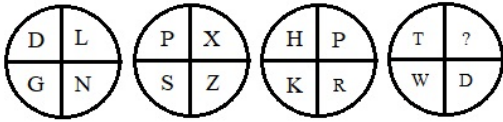
Q.8 The sequence of folding a piece of paper and the manner in which the folded paper has been cut is shown in the following figures. How would this paper look when unfolded?



- Ans**
- 1.
 - 2.
 - 3.
 - 4.

Question ID : 65497832797
 Status : Answered
 Chosen Option : 2

Q.9 Study the given pattern carefully and select the letter that can replace the question mark (?) in it.



- Ans
- 1. A
 - 2. Z
 - 3. B
 - 4. Y

Question ID : 65497832790
 Status : Answered
 Chosen Option : 2

Q.10 In a certain code language, 'CALM' is written as 'DCOQ'. How will 'COOK' be written in that language?

- Ans
- 1. DORQ
 - 2. DPRQ
 - 3. DROQ
 - 4. DQRO

Question ID : 65497832793
 Status : Answered
 Chosen Option : 4

Q.11 Select the option that is related to the third term in the same way as the second term is related to the first term.

INSERT: NIXZTR:: SECOND: ?

- Ans
- 1. ESJDHN
 - 2. EHSDJN
 - 3. ESHJDN
 - 4. EHHJND

Question ID : 65497832802
 Status : Answered
 Chosen Option : 3

Q.12 Identify the number that does NOT belong to the following series.

16, 17, 25, 52, 116, 243


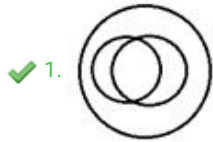
- Ans
- 1. 52
 - 2. 116
 - 3. 25
 - 4. 243

Question ID : 65497832807
 Status : Answered
 Chosen Option : 4

Q.13 Select the Venn diagram that best represents the relationship between the following classes.

Earth, Forest, Trees

Ans



Question ID : 65497832801

Status : Answered

Chosen Option : 1

Q.14 Ravali does not have any brother. Girima is the wife of Arjun. Zakir is the husband of Malavi. Chaya is the daughter of Ravali. Fatima is the daughter of Arjun. Malavi is the mother of Ravali. Girima is the maternal aunt of Chaya. How is Girima related to Zakir?

Ans ✓ 1. Daughter

✗ 2. Sister

✗ 3. Daughter-in-law

✗ 4. Sister-in-law

Question ID : 65497832804

Status : Answered

Chosen Option : 1

Q.15 'Factory' is related to 'Manufacture' in the same way as 'Kitchen' is related to '_____'.

Ans ✓ 1. Cook

✗ 2. Fruits

✗ 3. Plan

✗ 4. Vegetables

Question ID : 65497832799

Status : Answered

Chosen Option : 1

Q.16 Four letter-clusters have been given, out of which three are alike in some manner and one is different. Select the one that is different.

- Ans
- 1. LGB
 - 2. MHC
 - 3. FAU
 - 4. ZUP

Question ID : 65497832805
Status : Answered
Chosen Option : 3

Q.17 In a certain code language, 'MAGNET' is written as 'HFTIJO'. How will 'CULPRIT' be written in that language?

- Ans
- 1. XZOKINO
 - 2. XZGKMNO
 - 3. XPGUWDO
 - 4. XPQUMNO

Question ID : 65497832803
Status : Answered
Chosen Option : 2

Q.18 Select the number from among the given options that can replace the question mark (?) in the following series.

1, 2, 9, 64, ?

- Ans
- 1. 570
 - 2. 225
 - 3. 625
 - 4. 450

Question ID : 65497832791
Status : Answered
Chosen Option : 3

Q.19 Select the correct option that indicates the arrangement of the given words in the order in which they appear in an English dictionary.

- i. Monkey
- ii. Money
- iii. Monotony
- iv. Monarch
- v. Monster

- Ans
- 1. iv, iii, i, ii, v
 - 2. iv, ii, i, iii, v
 - 3. ii, i, iv, v, iii
 - 4. i, ii, iii, iv, v

Question ID : 65497832789
Status : Answered
Chosen Option : 2

Q.20 Select the correct mirror image of the given combination when the mirror is placed to its right side.

6 T Y G z 2

Ans

- ✗ 1. Z Z Ɔ Y T Ɔ
- ✓ 2. 5 5 Ɔ Y T Ɔ
- ✗ 3. 5 5 Ɔ ʌ T Ɔ
- ✗ 4. Ɔ ʌ Ɔ 5 5

Question ID : 65497832808
 Status : Answered
 Chosen Option : 2

Q.21 Six friends, P, Q, R, S, T and U, are sitting around a circular table at equal distance between each other, facing the centre. S is sitting between U and Q. P is second to the left of S and second to the right of T. Q is sitting between T and S. Who is sitting opposite to S?

Ans

- ✗ 1. U
- ✓ 2. R
- ✗ 3. P
- ✗ 4. T

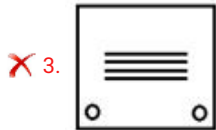
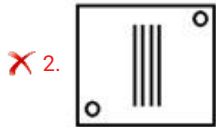
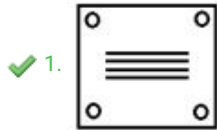
Question ID : 65497832800
 Status : Answered
 Chosen Option : 2

KD Job Updates

Q.22 Select the figure from among the given options that can replace the question mark (?) in the following series.



Ans



Question ID : 65497832792

Status : Answered

Chosen Option : 1

Q.23 Read the given statements and conclusions carefully. Assuming that the information given in the statements is true, even if it appears to be at variance with commonly known facts, decide which of the given conclusions logically follow(s) from the statements.

Statements:

All fruits are stems.

Some fruits are leaves.

Conclusions:

I. Some stems are leaves.

II. Some leaves are fruits.

Ans ✗ 1. Neither conclusion I nor II follows

✗ 2. Only conclusion I follows

✓ 3. Both conclusions I and II follow

✗ 4. Only conclusion II follows

Question ID : 65497832794

Status : Answered

Chosen Option : 3

Q.24 Select the option that is related to the third number in the same way as the second number is related to the first number.

11 : 121 :: 17 : ?

- Ans
- 1. 256
 - 2. 289
 - 3. 305
 - 4. 360

Question ID : 65497832785
Status : Answered
Chosen Option : 2

Q.25 Six students, Anima, Rohit, Kiran, Seema, Jaya and Manish, are top six rank holders in a school. The rank of Rohit is between the ranks of Kiran and Seema. Rohit is at the fourth rank. There are two students between the ranks of Jaya and Seema. Jaya is at the lowest rank among all the six students. The rank of Manish is immediately above the rank of Anima.

Who is at the fifth rank?

- Ans
- 1. Seema
 - 2. Kiran
 - 3. Anima
 - 4. Manish

Question ID : 65497832784
Status : Answered
Chosen Option : 2

Section : Part B General Knowledge and General Awareness

Q.1 Which of the following conditions could harm coffee plantations?

- Ans
- 1. Loamy soil containing humus and minerals such as iron and calcium
 - 2. Hot and humid climate
 - 3. Rains at the time of ripening of the berries
 - 4. Rainfall between 150 and 250 cm

Question ID : 65497832831
Status : Answered
Chosen Option : 2

Q.2 FPI consists of securities and other financial assets passively held by foreign investors. What is the full form of FPI?

- Ans
- 1. Final Payment Investment
 - 2. Final Portfolio Investment
 - 3. Foreign Payment Investment
 - 4. Foreign Portfolio Investment

Question ID : 65497832815
Status : Answered
Chosen Option : 4

Q.3 Who is the author of the book, 'Walking with the comrades'?

- Ans 1. Arundhati Roy
 2. Vikram Seth
 3. Kiran Desai
 4. Jhumpa Lahiri

Question ID : 65497832814
Status : Answered
Chosen Option : 4

Q.4 In September 2021, _____ became the first IAS officer to win a medal at the Paralympics.

- Ans 1. Nishad Kumar
 2. Devendra Jhajharia
 3. Singhraj Adhana
 4. Suhas Yathiraj

Question ID : 65497832833
Status : Answered
Chosen Option : 2

Q.5 Under which of the following Schedules of the Indian Wildlife (Protection) Act, 1972 are the Gangetic Dolphins protected?

- Ans 1. Fifth Schedule
 2. Seventh Schedule
 3. Third Schedule
 4. First Schedule

Question ID : 65497832827
Status : Answered
Chosen Option : 2

Q.6 A spring at Verinag is the source of _____ river in the northern part of India.

- Ans 1. Beas
 2. Jhelum
 3. Ravi
 4. Chenab

Question ID : 65497832823
Status : Answered
Chosen Option : 3

Q.7 In which country or state of India is Tengboche Monastery located?

- Ans 1. Sikkim
 2. Arunachal Pradesh
 3. Bhutan
 4. Nepal

Question ID : 65497832811
Status : Answered
Chosen Option : 2

Q.8 निम्नलिखित में से कौन सा पारिभाषिक शब्द उन प्रजातियों के लिए प्रयुक्त है जो स्थानीय आवास के प्राकृतिक आवासी नहीं हैं, लेकिन इस तंत्र में शामिल होते हैं?

- Ans
- 1. अजैव (Abiotic)
 - 2. जीवोम (Biome)
 - 3. स्थानिक (Endemic)
 - 4. विजातीय (Exotic)

Question ID : 65497832810
Status : Answered
Chosen Option : 4

Q.9 In which year was the Treaty of Bassein signed between Baji Rao II, the Maratha Peshwa of Poona in India, and the British?

- Ans
- 1. 1820
 - 2. 1810
 - 3. 1802
 - 4. 1801

Question ID : 65497832820
Status : Answered
Chosen Option : 3

Q.10 Lieutenant General Gurmit Singh was appointed as the Governor of _____ in September 2021.

- Ans
- 1. Tamil Nadu
 - 2. Uttarakhand
 - 3. Punjab
 - 4. Nagaland

Question ID : 65497832832
Status : Answered
Chosen Option : 2

Q.11 What special name is given to the frictional force exerted by a fluid?

- Ans
- 1. Shear
 - 2. Surface tension
 - 3. Buoyancy
 - 4. Drag

Question ID : 65497832813
Status : Answered
Chosen Option : 4

Q.12 The tomb of Itmad-ud-Daula (or Itimad-Ud-Daulah) is situated in _____.

- Ans
- 1. Fatehpur Sikri
 - 2. Shahjahanabad
 - 3. Aurangabad
 - 4. Agra

Question ID : 65497832829
Status : Answered
Chosen Option : 4

Q.13 The last Nawab of Awadh was _____.

- Ans
- 1. Wajid Ali Shah
 - 2. Mir Jafar
 - 3. Alivardi Khan
 - 4. Mansur Ali Khan

Question ID : 65497832825
Status : Answered
Chosen Option : 2

Q.14 The Budget Division that prepares the Union Budget of India is a part of the Department of _____ under the Ministry of Finance.

- Ans
- 1. Investment and Public Asset Management
 - 2. Economic Affairs
 - 3. Financial Services
 - 4. Revenue

Question ID : 65497832830
Status : Answered
Chosen Option : 3

Q.15 Which fort is regarded as the first pillar of Maratha empire?

- Ans
- 1. Sindhudurg
 - 2. Rajgad
 - 3. Prachandagad
 - 4. Panhala

Question ID : 65497832826
Status : Answered
Chosen Option : 3

Q.16 Who was appointed as India's Ambassador to Cambodia in October 2020?

- Ans
- 1. K Nandini Singla
 - 2. Manika Jain
 - 3. Narinder Chauhan
 - 4. Devyani Uttam Khobragade

Question ID : 65497832822
Status : Answered
Chosen Option : 3

Q.17 Under which Amendment was Goa accorded the status of full-fledged state?

- Ans
- 1. 71st
 - 2. 56th
 - 3. 52nd
 - 4. 61st

Question ID : 65497832821
Status : Answered
Chosen Option : 3

Q.18 Which of the following teams became the runner-up at IPL 2020?

- Ans
- 1. Sunrisers Hyderabad
 - 2. Delhi Capitals
 - 3. Royal Challengers Bangalore
 - 4. Mumbai Indians

Question ID : 65497832809
Status : Answered
Chosen Option : 4

Q.19 How much funds were allocated for senior citizens and persons with disabilities in Union Budget 2020?

- Ans
- 1. ₹9,500 Cr
 - 2. ₹10,000 Cr
 - 3. ₹7,500 Cr
 - 4. ₹8,500 Cr

Question ID : 65497832819
Status : Answered
Chosen Option : 3

Q.20 An inscription comprising ten large sized signs of Harappan script was found at:

- Ans
- 1. Banawali
 - 2. Kot Diji
 - 3. Dholavira
 - 4. Kalibangan

Question ID : 65497832817
Status : Answered
Chosen Option : 3

Q.21 The 'International Satavadhanam' program, launched virtually by the Vice President in November 2020 is related to:

- Ans
- 1. Literature
 - 2. Indian Navy
 - 3. Food safety
 - 4. Medicine

Question ID : 65497832818
Status : Answered
Chosen Option : 3

Q.22 Which of the following countries is the second largest steel producer in the world as per the World Steel Association (worldsteel) as of October 2020?

- Ans
- 1. Japan
 - 2. China
 - 3. Myanmar
 - 4. India

Question ID : 65497832828
Status : Answered
Chosen Option : 4

Q.23 If n is the energy level index for an atom, then for the M shell, n is equal to:

- Ans
- 1. 1
 - 2. 2
 - 3. 4
 - 4. 3

Question ID : 65497832812
Status : Answered
Chosen Option : 4

Q.24 Where was the National Badminton Championship 2019 held?

- Ans
- 1. Chandigarh
 - 2. Lucknow
 - 3. Guwahati
 - 4. Indore

Question ID : 65497832824
Status : Answered
Chosen Option : 4

Q.25 Which of the following diseases is caused by a virus transmitted primarily by *Aedes* mosquitoes?

- Ans
- 1. Tularemia
 - 2. Malaria
 - 3. Zika fever
 - 4. Minamata

Question ID : 65497832816
 Status : Answered
 Chosen Option : 2

Section : Part C Elementary Mathematics

Q.1 A certain sum amounts to ₹17,925 in 3 years and to ₹21,825 in 7 years at the same rate per cent per annum at simple interest. What will be the simple interest (in ₹) on a sum of ₹18,500 for $4\frac{2}{5}$ years at double the earlier rate?

- Ans
- 1. 10,582
 - 2. 8,245
 - 3. 9,876
 - 4. 7,625

Question ID : 65497832835
 Status : Answered
 Chosen Option : 1

Q.2 When an article is sold for ₹242.50, there is a loss of 3%. What will be the selling price, if the article is sold at a gain of 13%?

- Ans
- 1. ₹275.80
 - 2. ₹282.50
 - 3. ₹270.40
 - 4. ₹300.60

Question ID : 65497832851
 Status : Answered
 Chosen Option : 2

Q.3 The average of three numbers is 180. If the third number is greater by 10 than $\frac{1}{3}$ of the first number and less by 5 than the second number, then the third number is:

- Ans
- 1. 103
 - 2. 113
 - 3. 118
 - 4. 115

Question ID : 65497832846
 Status : Answered
 Chosen Option : 2

Q.4 A person can row a yacht along the stream at a speed of 9 km/h and against the stream at a speed of 7 km/h. The speed of the stream is:

- Ans**
- 1. $\frac{3}{4}$ km/h
 - 2. 2 km/h
 - 3. 1.5 km/h
 - 4. 1 km/h

Question ID : 65497832850
Status : Answered
Chosen Option : 4

Q.5 A shopkeeper sold $\frac{1}{4}$ of his stock at a gain of 25%, and the remaining stock at a gain of 19%. His total percentage of gain was:

- Ans**
- 1. 12.9%
 - 2. 20.5%
 - 3. 18.7%
 - 4. 22.5%

Question ID : 65497832834
Status : Answered
Chosen Option : 2

Q.6 A shoe company offers a discount of 25% and then a further discount of 42%. What is the final sale price (in ₹) of a pair of shoes costing ₹2,800?

- Ans**
- 1. 1,228
 - 2. 1,210
 - 3. 1,218
 - 4. 1,220

Question ID : 65497832855
Status : Answered
Chosen Option : 3

Q.7 Find the value of $[52 - 4 \text{ of } (17 - 12) + 4 \times 7] \div [30 \div 15 \times 5]$.

- Ans**
- 1. 10
 - 2. 6
 - 3. 8
 - 4. 12

Question ID : 65497832842
Status : Answered
Chosen Option : 2

Q.8 A vendor bought candies at 12 for ₹20 and sold them at 6 for ₹12. Find his percentage gain or loss.

- Ans
- 1. 20% gain
 - 2. 30% loss
 - 3. 15% gain
 - 4. 25% loss

Question ID : 65497832853
Status : Answered
Chosen Option : 1

Q.9 The average of ten consecutive odd numbers is 46. The average of smallest and the greatest number is:

- Ans
- 1. 46
 - 2. 50
 - 3. 54
 - 4. 38

Question ID : 65497832837
Status : Answered
Chosen Option : 1

Q.10 Find the value of $5 \div [6 \text{ of } 2 + (3 \times 7 \div (5 \text{ of } 3))]$.

- Ans
- 1. $\frac{17}{25}$
 - 2. $\frac{67}{15}$
 - 3. $\frac{25}{67}$
 - 4. $\frac{67}{5}$

Question ID : 65497832852
Status : Answered
Chosen Option : 3

Q.11 A sum at a certain rate of simple interest becomes ₹37,200 after 3 years and ₹42,000 after 5 years. Find the simple interest (in ₹) on the same sum at 6% per annum for 8 years.

- Ans
- 1. 14,000
 - 2. 14,750
 - 3. 14,400
 - 4. 14,260

Question ID : 65497832857
Status : Answered
Chosen Option : 3

Q.12 If P can complete $\frac{1}{3}$ of a work in 6 days and Q can complete $\frac{1}{4}$ of the same work in 9 days, how much will Q get if both work together and are paid in advance ₹210 in all?

- Ans**
- 1. ₹140
 - 2. ₹95
 - 3. ₹70
 - 4. ₹105

Question ID : 65497832854
 Status : Answered
 Chosen Option : 1

Q.13 Two numbers are in the ratio of 3 : 4. If 60% of the first number is 144, then 30% of the second number will be:

- Ans**
- 1. 120
 - 2. 69
 - 3. 96
 - 4. 92

Question ID : 65497832848
 Status : Answered
 Chosen Option : 3

Q.14 If $\frac{a}{b} : \frac{7}{5}$, then what will be the value of $\frac{(5a+4b)}{5a-4b}$?

- Ans**
- 1. $\frac{3}{11}$
 - 2. $\frac{7}{8}$
 - 3. $\frac{11}{3}$
 - 4. $\frac{5}{7}$

Question ID : 65497832840
 Status : Answered
 Chosen Option : 3

Q.15 A man goes to his office from his house at a speed of 4 km/h and returns at a speed of 2 km/h. If he takes 6 hours in going and coming, what is the distance between his house and office?

- Ans**
- 1. 4 km
 - 2. 6 km
 - 3. 8 km
 - 4. 8.5 km

Question ID : 65497832843
 Status : Answered
 Chosen Option : 3

Q.16 Two numbers are 8% and 28%, respectively, more than a third number. What is the ratio between the two numbers?

- Ans**
- 1. 5 : 9
 - 2. 5 : 6
 - 3. 27 : 32
 - 4. 2 : 7

Question ID : 65497832856
Status : Answered
Chosen Option : 3

Q.17 If X and Y together can complete a work in 10 days, Y and Z can complete the work in 12 days, and Z and X can complete the work in 15 days, then X alone will complete the work in:

- Ans**
- 1. 28 days
 - 2. 20 days
 - 3. 30 days
 - 4. 24 days

Question ID : 65497832849
Status : Answered
Chosen Option : 4

Q.18 A sum of ₹ x is divided between A, B and C such that the ratio of shares of A and B is 3 : 5 and that of B and C is 4 : 7. If the difference between the shares of B and C is ₹1,455, then the value of x is:

- Ans**
- 1. ₹6,944
 - 2. ₹3,395
 - 3. ₹6,499
 - 4. ₹5,335

Question ID : 65497832838
Status : Answered
Chosen Option : 3

Q.19 A conical cavity is drilled in a solid right circular cylinder of 6 cm height and 16 cm base diameter. The height and the base diameter of the cone are the same as those of the cylinder. Determine total surface area of the remaining solid?

- Ans**
- 1. $440 \pi \text{ cm}^2$
 - 2. $220 \pi \text{ cm}^2$
 - 3. $240 \pi \text{ cm}^2$
 - 4. $210 \pi \text{ cm}^2$

Question ID : 65497832841
Status : Answered
Chosen Option : 3

Q.20 Divide ₹12,100 into 2 parts such that when these are invested for 3 and 4 years, respectively, at the rate of 6 % per annum simple interest, the amounts received are equal. What is 75% of the difference between the two parts (in ₹)?

- Ans**
- 1. 300
 - 2. 225
 - 3. 400
 - 4. 200

Question ID : 65497832839
Status : Answered
Chosen Option : 2

Q.21 A shopkeeper bought 600 oranges and 400 bananas. He found that 30% of oranges and 18% of bananas were rotten. Find the percentage of the fruits in good condition.

- Ans**
- 1. 70.8
 - 2. 64.8
 - 3. 74.8
 - 4. 78.8

Question ID : 65497832845
Status : Answered
Chosen Option : 3

Q.22 A metallic slab having dimensions $16\text{ cm} \times 12\text{ cm} \times 9\text{ cm}$ is melted and recast in the shape of a cube. What is the surface area (in cm^2) of the cube?

- Ans**
- 1. 865
 - 2. 860
 - 3. 880
 - 4. 864

Question ID : 65497832858
Status : Answered
Chosen Option : 4

Q.23 The sum of two numbers is 342 and their HCF is 19. How many pairs of such numbers can be formed?

- Ans**
- 1. 3
 - 2. 2
 - 3. 4
 - 4. 6

Question ID : 65497832836
Status : Answered
Chosen Option : 1

Q.24 A shopkeeper offers 25% discount on the Marked Price Another shopkeeper offers three successive discounts of 5%, 12% and 10% on the same Marked Price. The difference between the discounts given by two shopkeepers is:

- Ans
- 1. 1.12%
 - 2. 0.24%
 - 3. 2.00%
 - 4. 1.00%

Question ID : 65497832847
Status : Answered
Chosen Option : 2

Q.25 There is a number greater than 1 which when divided by 4, 5 and 6 leaves the same remainder 3 in each case. Find the largest number, smaller than 500 which satisfies the given condition.

- Ans
- 1. 493
 - 2. 484
 - 3. 483
 - 4. 486

Question ID : 65497832844
Status : Answered
Chosen Option : 3

Section : Part D English

Q.1 Select the most appropriate option that can substitute the underlined segment in the given sentence. If there is no need to substitute it, select 'No substitution required'.

Are you get irritated if someone disturbs you?

- Ans
- 1. Do you get irritated
 - 2. No substitution required
 - 3. Are you get irritate
 - 4. Did you getting irritating

Question ID : 65497832874
Status : Answered
Chosen Option : 1

Q.2 Select the most appropriate option to fill in the blank.

It is essential to understand consumer behaviour so that protective _____ can be taken through legislation.

- Ans
- 1. methods
 - 2. events
 - 3. measures
 - 4. dealings

Question ID : 65497832863
Status : Answered
Chosen Option : 3

Q.3 Select the most appropriate SYNONYM of the given word.

Supreme

- Ans
- 1. Endless
 - 2. Matchless
 - 3. Careless
 - 4. Useless

Question ID : 65497832876
Status : Answered
Chosen Option : 2

Q.4 Select the most appropriate meaning of the given idiom.

All and sundry

- Ans
- 1. None
 - 2. Everywhere
 - 3. Very few
 - 4. Everyone

Question ID : 65497832869
Status : Answered
Chosen Option : 4

Q.5 Select the most appropriate ANTONYM of the given word.

Beseech

- Ans
- 1. Command
 - 2. Appeal
 - 3. Request
 - 4. Engage

Question ID : 65497832866
Status : Answered
Chosen Option : 4

Q.6 Select the most appropriate ANTONYM of the given word.

Ravish

- Ans
- 1. Captivate
 - 2. Attract
 - 3. Repel
 - 4. Charm

Question ID : 65497832871
Status : Answered
Chosen Option : 4

Q.7 Select the option that can be used as a one-word substitute for the given group of words.

Something that can be carried easily

- Ans
- 1. Portable
 - 2. Transferable
 - 3. Deliverable
 - 4. Plausible

Question ID : 65497832867
Status : Answered
Chosen Option : 1

Q.8 Select the INCORRECTLY spelt word.

- Ans
- 1. Infectious
 - 2. Valuable
 - 3. Specieal
 - 4. Precious

Question ID : 65497832862
Status : Answered
Chosen Option : 3

Q.9 Select the most appropriate option to fill in the blank.

After hours of discussion, the team _____ at the same conclusion.

- Ans
- 1. came
 - 2. arrived
 - 3. reached
 - 4. attained

Question ID : 65497832872
Status : Answered
Chosen Option : 2

Q.10 Select the most appropriate option that can substitute the underlined word in the given sentence.

The bacteria in the roots of leguminous plants submerge nitrogen in the soil to compounds.

- Ans
- 1. propose
 - 2. expand
 - 3. convert
 - 4. analyse

Question ID : 65497832859
Status : Answered
Chosen Option : 3

Q.11 The following sentence has been split into four segments. Identify the segment that contains a grammatical error.

I have been / reading this book / since / two days.

- Ans
- 1. two days
 - 2. since
 - 3. I have been
 - 4. reading this book

Question ID : 65497832865
Status : Answered
Chosen Option : 2

Q.12 Select the option that can be used as a one-word substitute for the given group of words.

One who can use either hand easily

- Ans
- 1. Skilled
 - 2. Disabled
 - 3. Single-handed
 - 4. Ambidextrous

Question ID : 65497832864
Status : Answered
Chosen Option : 4

Q.13 Select the most appropriate synonym of the given word.

Lure

- Ans
- 1. Attraction
 - 2. Warning
 - 3. Repulsion
 - 4. Indication

Question ID : 65497832861
Status : Answered
Chosen Option : 1

Q.14 The following sentence has been divided into parts. One of them may contain an error. Select the part that contains the error from the given options. If you don't find any error, select 'No error' as your answer.

Praneel is only two now / so he has not / started talk yet.

- Ans
- 1. started talk yet
 - 2. Praneel is only two now
 - 3. so he has not
 - 4. No error

Question ID : 65497832860
Status : Answered
Chosen Option : 1

Q.15 Select the most appropriate meaning of the given idiom.

Hold your horses

- Ans
- 1. Run fast
 - 2. Make a profit
 - 3. Be patient
 - 4. Take control

Question ID : 65497832878
Status : Answered
Chosen Option : 3

Q.16 The following sentence has been split into four segments. Identify the segment that contains a grammatical error.

Did the police find out who break into your store?

- Ans
- 1. your store
 - 2. who break into
 - 3. Did the police
 - 4. find out

Question ID : 65497832875
Status : Answered
Chosen Option : 4

Q.17 Select the most appropriate option to fill in the blank.

He _____ her that he had deposited the money in the bank.

- Ans
- 1. assumed
 - 2. ensured
 - 3. assured
 - 4. insured

Question ID : 65497832870
Status : Answered
Chosen Option : 2

Q.18 Select the most appropriate option that can substitute the underlined segment in the given sentence. If there is no need to substitute it, select 'No substitution required'.

The shopkeeper either offered to exchange the goods or refund the money.

- Ans
- 1. The shopkeeper offered either to
 - 2. No substitution required'
 - 3. The shopkeeper neither offered to
 - 4. Either the shopkeeper offered to

Question ID : 65497832873
Status : Answered
Chosen Option : 1

Q.19 Select the option that can be used as a one-word substitute for the given group of words.

A piece of land entirely surrounded by water

- Ans
- 1. Igloo
 - 2. Harbour
 - 3. Island
 - 4. Oasis

Question ID : 65497832877
Status : Answered
Chosen Option : 3

Q.20 Select the INCORRECTLY spelt word.

- Ans
- 1. Estimation
 - 2. Substitution
 - 3. Habbitation
 - 4. Presentation

Question ID : 65497832868
Status : Answered
Chosen Option : 3

Comprehension:

In the following passage, some words have been deleted. Read the passage carefully and select the most appropriate option to fill in each blank.

The plane had been hired to transport Appu, the baby elephant, as a gift from India to Nigeria. Just before the (1) _____, the co-pilot checked the wooden crate and (2) _____ that it looked safe. Little did he know how (3) _____ the flight was going to be. When the plane was (4) _____ Kenya, Appu broke his crate and (5) _____ the flight cabin. The pilot made an emergency landing in Kenya.

SubQuestion No : 21

Q.21 Select the most appropriate option to fill in blank no.1.

- Ans
- 1. departure
 - 2. escape
 - 3. retreat
 - 4. evacuation

Question ID : 65497832880
Status : Answered
Chosen Option : 1

Comprehension:

In the following passage, some words have been deleted. Read the passage carefully and select the most appropriate option to fill in each blank.

The plane had been hired to transport Appu, the baby elephant, as a gift from India to Nigeria. Just before the (1) _____, the co-pilot checked the wooden crate and (2) _____ that it looked safe. Little did he know how (3) _____ the flight was going to be. When the plane was (4) _____ Kenya, Appu broke his crate and (5) _____ the flight cabin. The pilot made an emergency landing in Kenya.

SubQuestion No : 22

Q.22 Select the most appropriate option to fill in blank no.2.

- Ans 1. described
 2. recited
 3. reported
 4. narrated

Question ID : 65497832881

Status : Answered

Chosen Option : 3

Comprehension:

In the following passage, some words have been deleted. Read the passage carefully and select the most appropriate option to fill in each blank.

The plane had been hired to transport Appu, the baby elephant, as a gift from India to Nigeria. Just before the (1) _____, the co-pilot checked the wooden crate and (2) _____ that it looked safe. Little did he know how (3) _____ the flight was going to be. When the plane was (4) _____ Kenya, Appu broke his crate and (5) _____ the flight cabin. The pilot made an emergency landing in Kenya.

SubQuestion No : 23

Q.23 Select the most appropriate option to fill in blank no.3.

- Ans 1. impressive
 2. unreliable
 3. devious
 4. dramatic

Question ID : 65497832882

Status : Answered

Chosen Option : 4

Comprehension:

In the following passage, some words have been deleted. Read the passage carefully and select the most appropriate option to fill in each blank.

The plane had been hired to transport Appu, the baby elephant, as a gift from India to Nigeria. Just before the (1) _____, the co-pilot checked the wooden crate and (2) _____ that it looked safe. Little did he know how (3) _____ the flight was going to be. When the plane was (4) _____ Kenya, Appu broke his crate and (5) _____ the flight cabin. The pilot made an emergency landing in Kenya.

SubQuestion No : 24

Q.24 Select the most appropriate option to fill in blank no.4.

- Ans 1. on
 2. between
 3. over
 4. beside

Question ID : 65497832883

Status : Answered

Chosen Option : 3

Comprehension:

In the following passage, some words have been deleted. Read the passage carefully and select the most appropriate option to fill in each blank.

The plane had been hired to transport Appu, the baby elephant, as a gift from India to Nigeria. Just before the (1) _____, the co-pilot checked the wooden crate and (2) _____ that it looked safe. Little did he know how (3) _____ the flight was going to be. When the plane was (4) _____ Kenya, Appu broke his crate and (5) _____ the flight cabin. The pilot made an emergency landing in Kenya.

SubQuestion No : 25

Q.25 Select the most appropriate option to fill in blank no.5.

- Ans 1. entered
 2. chased
 3. shared
 4. grabbed

Question ID : 65497832884

Status : Answered

Chosen Option : 1

Section : Part D Hindi

Q.1 दिए गए वाक्य में रेखांकित खंड को प्रतिस्थापित करने के लिए सबसे उपयुक्त विकल्प का चयन करें। यदि इसे प्रतिस्थापित करने की आवश्यकता नहीं है, तो विकल्प 'किसी बदलाव की आवश्यकता नहीं है' का चयन करें।

हम भोजन खाते हैं।

- Ans 1. किसी बदलाव की आवश्यकता नहीं है।
 2. करते हैं
 3. लेते हैं
 4. पाते हैं

Question ID : 65497832894

Status : Not Answered

Chosen Option : --

Q.2 दिए गए वाक्य में रेखांकित खंड को प्रतिस्थापित करने के लिए सबसे उपयुक्त विकल्प का चयन करें। यदि इसे प्रतिस्थापित करने की आवश्यकता नहीं है, तो विकल्प 'किसी बदलाव की आवश्यकता नहीं है' का चयन करें।

सब लोग अपनी राय दें।

- Ans
- 1. इनकी
 - 2. उनकी
 - 3. अपनी-अपनी
 - 4. किसी बदलाव की आवश्यकता नहीं है।

Question ID : 65497832896
Status : Not Answered
Chosen Option : --

Q.3 'जलाशय' का पर्यायवाची है-

- Ans
- 1. महीधर
 - 2. रत्नाकर
 - 3. पद्माकर
 - 4. जलधर

Question ID : 65497832898
Status : Not Answered
Chosen Option : --

Q.4 दिए गए वाक्य का वह भाग ज्ञात करें जिसमें कोई त्रुटि है। यदि कोई त्रुटि नहीं है, तो 'कोई त्रुटि नहीं है' चुनें।

स्कूल का सभी विद्यार्थी (1)\ इस मैदान में (2)\ प्रार्थना के लिए आते है (3)\ कोई त्रुटि नहीं है (4)

- Ans
- 1. 1
 - 2. 4
 - 3. 2
 - 4. 3

Question ID : 65497832885
Status : Not Answered
Chosen Option : --

Q.5 मधुर बात करनेवाला - वाक्यांश के लिए एक शब्द लिखिए-

- Ans
- 1. मधुर भाषी
 - 2. अल्पभाषी
 - 3. संगीतज्ञ
 - 4. सुखद

Question ID : 65497832899
Status : Not Answered
Chosen Option : --

Q.6 दिए गए वाक्य में रेखांकित खंड को प्रतिस्थापित करने के लिए सबसे उपयुक्त विकल्प का चयन करें। यदि इसे प्रतिस्थापित करने की आवश्यकता नहीं है, तो विकल्प 'किसी बदलाव की आवश्यकता नहीं है' का चयन करें।

आपसे मेरा सविनयपूर्वक निवेदन है।

- Ans
- 1. किसी बदलाव की आवश्यकता नहीं है।
 - 2. सविनय निवेदन है
 - 3. विनम्रपूर्वक निवेदन है
 - 4. समग्रपूर्वक अनुरोध है

Question ID : 65497832895
Status : Not Answered
Chosen Option : --

Q.7 रिक्त स्थान की पूर्ति के लिए सबसे उपयुक्त विकल्प का चयन करें।

शेखर अज्ञेय के एक उपन्यास का _____ है।

- Ans
- 1. अभिनेता
 - 2. नेता
 - 3. नायक
 - 4. सूत्रधार

Question ID : 65497832904
Status : Not Answered
Chosen Option : --

Q.8 दिए गए शब्द का विलोम चुनें।

प्रत्यक्ष

- Ans
- 1. परोक्ष
 - 2. अभिमुख
 - 3. सम्मुख
 - 4. समीप

Question ID : 65497832891
Status : Not Answered
Chosen Option : --

Q.9 उसका पास कुछ भी नहीं है।

रेखांकित शब्द की अशुद्धि पहचानिए-

- Ans
- 1. विभक्ति के कारण
 - 2. सर्वनाम के कारण
 - 3. कोई भी गलती नहीं है।
 - 4. संज्ञा के कारण

Question ID : 65497832900
Status : Not Answered
Chosen Option : --

Q.10 दिए गए शब्द का समानार्थी शब्द बताइए-

कपड़ा

- Ans
- 1. वज़न
 - 2. वमन
 - 3. वसन
 - 4. वपन

Question ID : 65497832886

Status : Not Answered

Chosen Option : --

Q.11 उस विकल्प का चयन करें जो निम्न मुहावरे का सही अर्थ व्यक्त करता है।

भगीरथ श्रम करना

- Ans
- 1. अथक प्रयत्न करना
 - 2. दृढ़ प्रतीज्ञा करना
 - 3. असम्भव कार्य करना
 - 4. कठिन श्रम करना

Question ID : 65497832892

Status : Not Answered

Chosen Option : --

Q.12 राह दिखानेवाला - वाक्यांश के लिए एक शब्द लिखिए।

- Ans
- 1. राही
 - 2. पथदर्शक
 - 3. मुसाफिर
 - 4. पथिक

Question ID : 65497832902

Status : Not Answered

Chosen Option : --

Q.13 उत्थान - रेखांकित शब्द का विलोम बताइए-

- Ans
- 1. आदर्श
 - 2. प्रगति
 - 3. पतन
 - 4. विकर्षण

Question ID : 65497832901

Status : Not Answered

Chosen Option : --

Q.14 'रास्ता देखना' मुहावरे का सही अर्थ है-

- Ans 1. मूल्यांकन करना
 2. प्रतीक्षा करना
 3. निराश होना
 4. परेशान होना

Question ID : 65497832903
 Status : Not Answered
 Chosen Option : --

Q.15 सही वर्तनी वाले शब्द का चयन करें।

- Ans 1. आत्मोत्सग
 2. आत्मोत्सर्ग
 3. आत्मोतसर्ग
 4. आत्मौत्सर्ग

Question ID : 65497832889
 Status : Not Answered
 Chosen Option : --

Q.16 दिये गये वाक्य के किस भाग में त्रुटि है?

मैं उसकी बुद्धिमानता से बहुत प्रभावित हूँ।

- Ans 1. प्रभावित हूँ।
 2. मैं उसकी
 3. बुद्धिमानता
 4. से बहुत

Question ID : 65497832897
 Status : Not Answered
 Chosen Option : --

Q.17 रिक्त स्थान की पूर्ति के लिए सबसे उपयुक्त शब्द का चयन करें।

मेरा और आपका _____ सम्बन्ध है।

- Ans 1. पक्का
 2. गहन
 3. घोर
 4. घनिष्ठ

Question ID : 65497832893
 Status : Not Answered
 Chosen Option : --

Q.18 दिए गये वाक्यांश के लिए एक शब्द दीजिये-

जो बहुत बोलता हो

- Ans 1. वाचाल
✗ 2. बहुभाषी
✗ 3. मितभाषी
✗ 4. अल्पभाषी

Question ID : 65497832887
Status : Not Answered
Chosen Option : --

Q.19 सही वर्तनी वाले शब्द का चयन करें।

- Ans 1. एकाग्रचित
✗ 2. एकाग्रचित
✗ 3. एकाग्रचित
✗ 4. एकाग्रचित

Question ID : 65497832888
Status : Not Answered
Chosen Option : --

Q.20 रिक्त स्थान की पूर्ति के लिए सबसे उपयुक्त शब्द का चयन करें-

उसका हृदय बड़ा _____ था।

- Ans ✓ 1. कठोर
✗ 2. कठिन
✗ 3. कर्कश
✗ 4. कसैला

Question ID : 65497832890
Status : Not Answered
Chosen Option : --

Comprehension:

गद्यांश को पढ़कर पूछे गये प्रश्नों के उत्तर लिखिए-

भारत के इतिहास में अमरत्व प्राप्ति के अधिकारी लौह-पुरुष सरदार वल्लभभाई पटेल को कौन नहीं जानता? 31 अक्टूबर, 1875 में गुजरात के नाडियाद गाँव में एक किसान परिवार में उनका जन्म हुआ था। पाठशाला का अभ्यास करने में काफी समय लगा था। 36 साल की उम्र में वकालत पढ़ने के लिए वे इंग्लैंड गए। उन्होंने 36 महीने का कोर्स 30 महीनों में पूरा किया। 1917 में वे गांधीजी के संपर्क में आए। ब्रिटिश राज्य के खिलाफ अहिंसक आंदोलन के जरिये बारदोली, बलसाड, खेड़ा आदि के किसानों को एकत्र किया। उनके इस आंदोलन ने उन्हें प्रसिद्धि एवं प्रतिष्ठा दिलाई। भारतीय राष्ट्रीय कांग्रेस ने प्रमुख स्थान दिया। लोगों ने उन्हें सरदार की उपाधि दी। आजादी के बाद छोटी-छोटी रियायतों को एक करने का कार्य किया। 15 अगस्त, 1947 तक हैदराबाद, कश्मीर और जूनागढ़ को छोड़कर सभी रियायतें भारत संघ में सम्मिलित हो गई थीं। गृहमंत्री बनने के बाद लगभग छः सौ रियायतों को भारत संघ में सम्मिलित किया। हैदराबाद के नवाब ने विरोध किया तो वहाँ सेना भेजकर निजाम को आत्मसमर्पण करने के लिए मजबूर किया। 15 दिसम्बर, 1950 को जगमगता वह सितारा हमें अंधकार में छोड़कर चला गया। सन् 1991 में उन्हें भारतरत्न से सम्मानित किया गया। स्वतंत्रता सेनानी सरदार वल्लभभाई की जीवनी सदैव प्रेरणादायी है।

SubQuestion No : 21

Q.21 _____ को लौहपुरुष कहा जाता है।

- Ans 1. लाला लजपतराय
2. सरदार वल्लभभाई पटेल
3. मोरारजी देसाई
4. अटल बिहारी वाजपेयी

Question ID : 65497832906

Status : Not Answered

Chosen Option : --

Comprehension:

गद्यांश को पढ़कर पूछे गये प्रश्नों के उत्तर लिखिए-

भारत के इतिहास में अमरत्व प्राप्ति के अधिकारी लौह-पुरुष सरदार वल्लभभाई पटेल को कौन नहीं जानता? 31 अक्टूबर, 1875 में गुजरात के नाडियाद गाँव में एक किसान परिवार में उनका जन्म हुआ था। पाठशाला का अभ्यास करने में काफी समय लगा था। 36 साल की उम्र में वकालत पढ़ने के लिए वे इंग्लैंड गए। उन्होंने 36 महीने का कोर्स 30 महीनों में पूरा किया। 1917 में वे गांधीजी के संपर्क में आए। ब्रिटिश राज्य के खिलाफ अहिंसक आंदोलन के जरिये बारदोली, बलसाड, खेड़ा आदि के किसानों को एकत्र किया। उनके इस आंदोलन ने उन्हें प्रसिद्धि एवं प्रतिष्ठा दिलाई। भारतीय राष्ट्रीय कांग्रेस ने प्रमुख स्थान दिया। लोगों ने उन्हें सरदार की उपाधि दी। आजादी के बाद छोटी-छोटी रियायतों को एक करने का कार्य किया। 15 अगस्त, 1947 तक हैदराबाद, कश्मीर और जूनागढ़ को छोड़कर सभी रियायतें भारत संघ में सम्मिलित हो गई थीं। गृहमंत्री बनने के बाद लगभग छः सौ रियायतों को भारत संघ में सम्मिलित किया। हैदराबाद के नवाब ने विरोध किया तो वहाँ सेना भेजकर निजाम को आत्मसमर्पण करने के लिए मजबूर किया। 15 दिसम्बर, 1950 को जगमगता वह सितारा हमें अंधकार में छोड़कर चला गया। सन् 1991 में उन्हें भारतरत्न से सम्मानित किया गया। स्वतंत्रता सेनानी सरदार वल्लभभाई की जीवनी सदैव प्रेरणादायी है।

SubQuestion No : 22

Q.22 वकालत शब्द को व्याकरणिक दृष्टि से पहचानिए-

- Ans 1. विशेषण
2. व्यक्तिवाचक संज्ञा
3. जातिवाचक संज्ञा
4. भाववाचक संज्ञा

Question ID : 65497832907

Status : Not Answered

Chosen Option : --

Comprehension:

गद्यांश को पढ़कर पूछे गये प्रश्नों के उत्तर लिखिए-

भारत के इतिहास में अमरत्व प्राप्ति के अधिकारी लौह-पुरुष सरदार वल्भभाई पटेल को कौन नहीं जानता? 31 अक्टूबर, 1875 में गुजरात के नाडियाद गाँव में एक किसान परिवार में उनका जन्म हुआ था। पाठशाला का अभ्यास करने में काफी समय लगा था। 36 साल की उम्र में वकालत पढ़ने के लिए वे इंग्लैंड गए। उन्होंने 36 महीने का कोर्स 30 महीनों में पूरा किया। 1917 में वे गांधीजी के संपर्क में आए। ब्रिटिश राज्य के खिलाफ अहिंसक आंदोलन के जरिये बारदोली, बलसाड, खेड़ा आदि के किसानों को एकत्र किया। उनके इस आंदोलन ने उन्हें प्रसिद्धि एवं प्रतिष्ठा दिलाई। भारतीय राष्ट्रीय कांग्रेस ने प्रमुख स्थान दिया। लोगों ने उन्हें सरदार की उपाधि दी। आजादी के बाद छोटी-छोटी रियायतों को एक करने का कार्य किया। 15 अगस्त, 1947 तक हैदराबाद, कश्मीर और जूनागढ़ को छोड़कर सभी रियायतें भारत संघ में सम्मिलित हो गई थीं। गृहमंत्री बनने के बाद लगभग छः सौ रियायतों को भारत संघ में सम्मिलित किया। हैदराबाद के नवाब ने विरोध किया तो वहाँ सेना भेजकर निजाम को आत्मसमर्पण करने के लिए मजबूर किया। 15 दिसम्बर, 1950 को जगमगता वह सितारा हमें अंधकार में छोड़कर चला गया। सन् 1991 में उन्हें भारतरत्न से सम्मानित किया गया। स्वतंत्रता सेनानी सरदार वल्लभभाई की जीवनी सदैव प्रेरणादायी है।

SubQuestion No : 23

Q.23 आजादी के बाद उन्होंने कौन-सा पद संभाला?

- Ans
- 1. प्रधानमंत्री का
 - 2. राष्ट्रपति का
 - 3. गृहमंत्री का
 - 4. संरक्षण मंत्री का

Question ID : 65497832908

Status : Not Answered

Chosen Option : --

Comprehension:

गद्यांश को पढ़कर पूछे गये प्रश्नों के उत्तर लिखिए-

भारत के इतिहास में अमरत्व प्राप्ति के अधिकारी लौह-पुरुष सरदार वल्भभाई पटेल को कौन नहीं जानता? 31 अक्टूबर, 1875 में गुजरात के नाडियाद गाँव में एक किसान परिवार में उनका जन्म हुआ था। पाठशाला का अभ्यास करने में काफी समय लगा था। 36 साल की उम्र में वकालत पढ़ने के लिए वे इंग्लैंड गए। उन्होंने 36 महीने का कोर्स 30 महीनों में पूरा किया। 1917 में वे गांधीजी के संपर्क में आए। ब्रिटिश राज्य के खिलाफ अहिंसक आंदोलन के जरिये बारदोली, बलसाड, खेड़ा आदि के किसानों को एकत्र किया। उनके इस आंदोलन ने उन्हें प्रसिद्धि एवं प्रतिष्ठा दिलाई। भारतीय राष्ट्रीय कांग्रेस ने प्रमुख स्थान दिया। लोगों ने उन्हें सरदार की उपाधि दी। आजादी के बाद छोटी-छोटी रियायतों को एक करने का कार्य किया। 15 अगस्त, 1947 तक हैदराबाद, कश्मीर और जूनागढ़ को छोड़कर सभी रियायतें भारत संघ में सम्मिलित हो गई थीं। गृहमंत्री बनने के बाद लगभग छः सौ रियायतों को भारत संघ में सम्मिलित किया। हैदराबाद के नवाब ने विरोध किया तो वहाँ सेना भेजकर निजाम को आत्मसमर्पण करने के लिए मजबूर किया। 15 दिसम्बर, 1950 को जगमगता वह सितारा हमें अंधकार में छोड़कर चला गया। सन् 1991 में उन्हें भारतरत्न से सम्मानित किया गया। स्वतंत्रता सेनानी सरदार वल्लभभाई की जीवनी सदैव प्रेरणादायी है।

SubQuestion No : 24

Q.24 उनका जन्म _____ हुआ था।

- Ans
- 1. मुस्लिम परिवार में
 - 2. ब्राह्मण परिवार में
 - 3. पारसी परिवार में
 - 4. किसान परिवार में

Question ID : 65497832909

Status : Not Answered

Chosen Option : --

Comprehension:

गद्यांश को पढ़कर पूछे गये प्रश्नों के उत्तर लिखिए-

भारत के इतिहास में अमरत्व प्राप्ति के अधिकारी लौह-पुरुष सरदार वल्लभभाई पटेल को कौन नहीं जानता? 31 अक्टूबर, 1875 में गुजरात के नाडियाद गाँव में एक किसान परिवार में उनका जन्म हुआ था। पाठशाला का अभ्यास करने में काफी समय लगा था। 36 साल की उम्र में वकालत पढ़ने के लिए वे इंग्लैंड गए। उन्होंने 36 महीने का कोर्स 30 महीनों में पूरा किया। 1917 में वे गांधीजी के संपर्क में आए। ब्रिटिश राज्य के खिलाफ अहिंसक आंदोलन के जरिये बारदोली, बलसाड, खेड़ा आदि के किसानों को एकत्र किया। उनके इस आंदोलन ने उन्हें प्रसिद्धि एवं प्रतिष्ठा दिलाई। भारतीय राष्ट्रीय कांग्रेस ने प्रमुख स्थान दिया। लोगों ने उन्हें सरदार की उपाधि दी। आजादी के बाद छोटी-छोटी रियायतों को एक करने का कार्य किया। 15 अगस्त, 1947 तक हैदराबाद, कश्मीर और जूनागढ़ को छोड़कर सभी रियायतें भारत संघ में सम्मिलित हो गई थीं। गृहमंत्री बनने के बाद लगभग छः सौ रियायतों को भारत संघ में सम्मिलित किया। हैदराबाद के नवाब ने विरोध किया तो वहाँ सेना भेजकर निजाम को आत्मसमर्पण करने के लिए मजबूर किया। 15 दिसम्बर, 1950 को जगमगता वह सितारा हमें अंधकार में छोड़कर चला गया। सन् 1991 में उन्हें भारतरत्न से सम्मानित किया गया। स्वतंत्रता सेनानी सरदार वल्लभभाई की जीवनी सदैव प्रेरणादायी है।

SubQuestion No : 25

Q.25 उनकी मृत्यु _____ को हुई।

Ans 1. 15 दिसम्बर, 1950

2. 31 दिसम्बर, 1950

3. 25 दिसम्बर, 1950

4. 15 अक्टूबर, 1875

Question ID : 65497832910

Status : Not Answered

Chosen Option : --

KD Job Updates

Exam Date	10/12/2021
Exam Time :	12:30 PM - 2:00 PM
Subject	Constable GD 2021

Section : Part A General Intelligence and Reasoning

Q.1 Select the letter-cluster from among the given options that can replace the question mark (?) in the following series.

BZCA, EXFY, HVIW, KTLU, ?

- Ans
- 1. ORNP
 - 2. NRPS
 - 3. NROS
 - 4. RNPO

Question ID : 65497831278
 Status : Answered
 Chosen Option : 3

Q.2 Select the option that is related to the third number in the same way as the second number is related to the first number and the sixth number is related to the fifth number.

13: 156 :: 18: ? :: 17 : 272

- Ans
- 1. 305
 - 2. 306
 - 3. 307
 - 4. 308

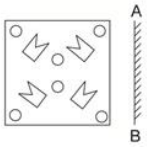
Question ID : 65497831271
 Status : Answered
 Chosen Option : 2

Q.3 In a certain code language, 'GLOBE' is written as 'KPKFA'. How will 'DRINK' be written in that language?

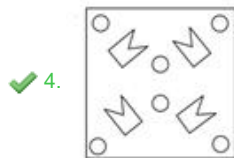
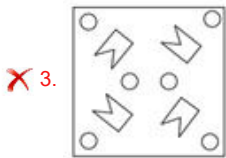
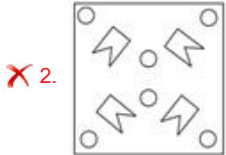
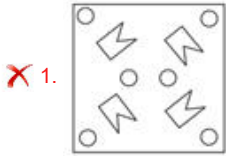
- Ans
- 1. HNEJO
 - 2. ZRVMG
 - 3. HVERO
 - 4. ZVMRG

Question ID : 65497831268
 Status : Answered
 Chosen Option : 3

Q.4 Select the correct mirror image of the given figure when the mirror is placed at 'AB' as shown.



Ans



Question ID : 65497831267
 Status : Answered
 Chosen Option : 4

Q.5 If 'A' denotes 'addition', 'B' denotes 'multiplication', 'C' denotes 'subtraction' and 'D' denotes 'division', then what will be the value of the following expression?

483 D 23 A 93 C 16 B 4

- Ans
- ✗ 1. 67
 - ✗ 2. 60
 - ✗ 3. 57
 - ✓ 4. 50

Question ID : 65497831273
 Status : Answered
 Chosen Option : 4

Q.6 Four letter-clusters have been given, out of which three are alike in some manner and one is different. Select the letter-cluster that is different.

- Ans
- ✗ 1. FGHE
 - ✗ 2. BCDA
 - ✗ 3. HIJG
 - ✓ 4. STUV

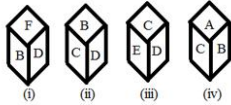
Question ID : 65497831264
 Status : Answered
 Chosen Option : 4

Q.7 In a certain code language, 'CROW' is coded as '3-18-15-23' and 'FISH' is coded as '6-9-19-8'. How will 'BULL' be coded in that language?

- Ans
- 1. 3-20-11-11
 - 2. 2-22-13-13
 - 3. 2-22-12-12
 - 4. 2-21-12-12

Question ID : 65497831265
 Status : Answered
 Chosen Option : 4

Q.8 Four different positions of the same dice are shown. Select the letter that will be on the face opposite to the face having the letter 'B'.



- Ans
- 1. E
 - 2. C
 - 3. D
 - 4. F

Question ID : 65497831275
 Status : Answered
 Chosen Option : 1

Q.9 Select the number from among the given options that can replace the question mark (?) in the following series.

6, 54, 378, 1890, ?

- Ans
- 1. 5670
 - 2. 6811
 - 3. 4236
 - 4. 6002

Question ID : 65497831266
 Status : Answered
 Chosen Option : 1

Q.10 Study the given pattern carefully and select the number that can replace the question mark (?) in it.

5 17 61
 6 21 75
 8 ? 103



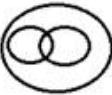
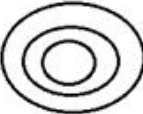
- Ans
- 1. 27
 - 2. 29
 - 3. 21
 - 4. 23

Question ID : 65497831272
 Status : Answered
 Chosen Option : 1

Q.11 Select the Venn diagram that best illustrates the relationship between the following classes.

Civics, Subject, Chemistry

Ans

- ✓ 1. 
- ✗ 2. 
- ✗ 3. 
- ✗ 4. 

Question ID : 65497831281
Status : Answered
Chosen Option : 1

Q.12 Select the number from among the given options that can replace the question mark (?) in the following series.

241, 258, 275, 292, ?

Ans

- ✗ 1. 299
- ✗ 2. 325
- ✗ 3. 313
- ✓ 4. 309

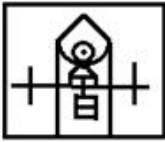
Question ID : 65497831262
Status : Answered
Chosen Option : 4

Q.13 Select the option in which the given figure is embedded (rotation is NOT allowed).

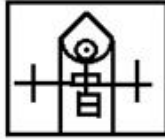


Ans

✗ 1.



✓ 2.



✗ 3.



✗ 4.



Question ID : 65497831276

Status : Answered

Chosen Option : 2

Q.14 Read the given statements and conclusions carefully. Assuming that the information given in the statements is true, even if it appears to be at variance with commonly known facts, decide which of the given conclusions logically follow(s) from the statements.

Statements:

All belts are shoes.

All shoes are caps.

Some hats are caps.

Conclusions:

I. Some caps are belts.

II. Some hats are shoes.

III. All shoes are belts.

Ans ✓ 1. Only conclusion I follows

✗ 2. Only conclusions I and II follow

✗ 3. Only conclusions I and III follow

✗ 4. Only conclusion II follows

Question ID : 65497831270

Status : Answered

Chosen Option : 1

Q.15 In a certain code language, CLOUD is written as DMNTE, and MANGO is written as NZOHN. How will PASTEUR be written in that language?

- Ans
- 1. UTBQSVF
 - 2. QZTUDTS
 - 3. QZRSQVS
 - 4. QBTUFVS

Question ID : 65497831283
 Status : Answered
 Chosen Option : 2

Q.16 If 'A % B' means 'A is the daughter of B', 'A & B' means 'A is the wife of B', and 'A # B' means 'A is the son of B', then how is G related to Z in the expression V % G & H # L & Z?

- Ans
- 1. Sister-in-law
 - 2. Daughter-in-law
 - 3. Daughter
 - 4. Maternal aunt

Question ID : 65497831284
 Status : Answered
 Chosen Option : 2

Q.17 Six professional interior designers, Pavan, Nayan, Ratan, Shiva, Tanuja and Urmila, are sitting around a hexagonal table, each at one corner, and are facing the centre of the hexagonal table. Pavan is second to the left of Urmila. Nayan is the neighbour of Ratan and Shiva. Tanuja is second to the left of Shiva. Who among the following are the neighbours of Pavan?

- Ans
- 1. Urmila and Ratan
 - 2. Tanuja and Ratan
 - 3. Urmila and Tanuja
 - 4. Shiva and Nayan

Question ID : 65497831269
 Status : Answered
 Chosen Option : 2

Q.18 'Mouse' is related to 'Computer' in the same way as 'Flash' is related to '_____'.

- Ans
- 1. Camera
 - 2. Sparkle
 - 3. Card
 - 4. Printer

Question ID : 65497831279
 Status : Answered
 Chosen Option : 1

Q.19 Select the option that is related to the third term in the same way as the second term is related to the first term.

PLUM : KOFN :: MIST : ?

- Ans
- 1. NRFH
 - 2. ROGH
 - 3. NRHG
 - 4. ORGH

Question ID : 65497831282
 Status : Answered
 Chosen Option : 3

Q.20 Select the combination of letters that when sequentially placed in the blanks of the given series will complete the series.

L P _ S T _ _ Q _ T L _ _ S T

- Ans
- 1. QLPSPQ
 - 2. PQSLSP
 - 3. PQLQLP
 - 4. LQPQSP

Question ID : 65497831261
 Status : Answered
 Chosen Option : 1

Q.21 The sequence of folding a piece of paper and the manner in which the folded paper has been cut is shown in the following figures. How would this paper look when unfolded?



- Ans
- 1.
 - 2.
 - 3.
 - 4.

Question ID : 65497831277
 Status : Answered
 Chosen Option : 3

Q.22 Manoj starts from his home and reaches the temple in 7 hours. He travels 1/4 th of the total distance at a speed of 10 km/h and the remaining distance at 12 km/h. Find the distance between his home and the temple.

- Ans
- 1. 80 km
 - 2. 90 km
 - 3. 70 km
 - 4. 72 km

Question ID : 65497831274
 Status : Answered
 Chosen Option : 1

Q.23 Select the correct option that indicates the arrangement of the given words in the order in which they appear in an English dictionary.

1. Mischievous
2. Miscreant
3. Millennium
4. Misconception
5. Millionaire

Ans 1. 1, 2, 3, 4, 5
 2. 3, 5, 1, 2, 4
 3. 3, 5, 2, 4, 1
 4. 3, 5, 1, 4, 2

Question ID : 65497831260

Status : Answered

Chosen Option : 4

Q.24 Five persons are standing in a row facing north. G is standing at the second place to the right of J. H is not next to K. If M is standing second from the extreme right, then who is standing at the extreme left end of the row?

Ans 1. K
 2. M
 3. G
 4. J

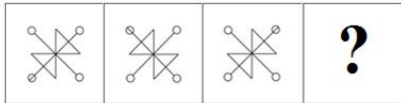
Question ID : 65497831280

Status : Answered

Chosen Option : 4

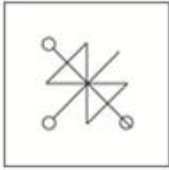
KD Job Updates

Q.25 Select the figure from among the given options that can replace the question mark (?) in the following series.

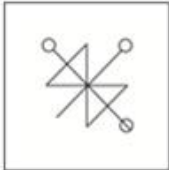


Ans

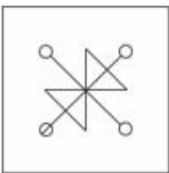
✗ 1.



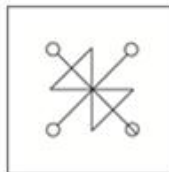
✗ 2.



✗ 3.



✓ 4.



Question ID : 65497831263
 Status : Answered
 Chosen Option : 4

Section : Part B General Knowledge and General Awareness

Q.1 Increase in MSP has forced farmers to divert land from production of coarse grains to production of _____.

Ans ✗ 1. barley and jowar

✓ 2. wheat and rice

✗ 3. maize

✗ 4. small millets

Question ID : 65497831297
 Status : Answered
 Chosen Option : 2

Q.2 In July 2021, the Indian Oil Corporation Limited announced that it would set up India's first 'Green Hydrogen' plant at its _____ refinery.

Ans ✓ 1. Mathura

✗ 2. Paradip

✗ 3. Panipat

✗ 4. Haldia

Question ID : 65497831309
 Status : Answered
 Chosen Option : 1

Q.3 The excessive quantities of chemicals which get washed from the fields act as nutrients for _____ to flourish.

- Ans 1. algae
 2. fungi
 3. bacteria
 4. soil

Question ID : 65497831298
 Status : Answered
 Chosen Option : 3

Q.4 What is least required for production of goods and services?

- Ans 1. Land and other natural resources
 2. People to do the work
 3. Tools, raw material and money
 4. Institutes to educate people

Question ID : 65497831295
 Status : Answered
 Chosen Option : 4

Q.5 The 'Dronacharya Award' is associated with _____.

- Ans 1. famous artisans
 2. outstanding coaches in sports and games
 3. exceptional warriors
 4. eminent doctors and surgeons

Question ID : 65497831301
 Status : Answered
 Chosen Option : 2

Q.6 As a part of Nationally Determined Contributions as per the Paris Accord on Climate Change, India has made a pledge that by 2030, _____ of our installed power generation capacity shall be from non-fossil fuel sources.

- Ans 1. 40%
 2. 20%
 3. 30%
 4. 10%

Question ID : 65497831299
 Status : Not Answered
 Chosen Option : --

Q.7 1932 म.हा. र त पूना समझौता, महा गांधी और _____ के बीच हुआ एक समझौता था, जिसके बाद महा गांधी ने अपना अनशन समाप्त किया।

- Ans 1. मुहम्मद अली जिन्ना
 2. जवाहरलाल नेहरू
 3. लॉर्ड इरविन
 4. बीआर अम्बेडकर

Question ID : 65497831306
 Status : Answered
 Chosen Option : 3

Q.8 Who among the following won the Global Gandhi Peace Award in October 2020?

- Ans 1. Anita Devi
 2. Santosh Sharma
 3. Kanchan Sharma
 4. Poonam Khangarot

Question ID : 65497831291
Status : Not Answered
Chosen Option : --

Q.9 Article 72 of the Constitution of India deals with _____.

- Ans 1. conduct of business of the Government of India
 2. qualification for membership of the Parliament
 3. the constitution of the Parliament
 4. the power of the President to grant pardons

Question ID : 65497831308
Status : Answered
Chosen Option : 4

Q.10 Many scholars argue that the Mesopotamian people of Tigris- Euphrates valley called Indus Valley Civilization _____.

- Ans 1. Magan
 2. Meluhha
 3. Sumerian
 4. Babylon

Question ID : 65497831287
Status : Not Answered
Chosen Option : --

Q.11 In which of the following places is the headquarters of Eastern Command of Indian Army located?

- Ans 1. Kolkata
 2. Pune
 3. Guwahati
 4. Lucknow

Question ID : 65497831290
Status : Answered
Chosen Option : 3

Q.12 Which of the following organs is related with the anatomy of the human eye?

- Ans 1. Stigma
 2. Patella
 3. Iris
 4. Spleen

Question ID : 65497831286
Status : Answered
Chosen Option : 3

Q.13 The first amendment to the Constitution of India was made in the year ____.

- Ans
- 1. 1954
 - 2. 1950
 - 3. 1959
 - 4. 1951

Question ID : 65497831302
Status : Answered
Chosen Option : 4

Q.14 मौलद, निम्नलिख त में से किसो हार का दूसरा नाम है?

- Ans
- 1. मुहर्रम
 - 2. मिलाद-उन-नबी
 - 3. ईद-उल-फ़ितर
 - 4. ईद-उल-जुहा

Question ID : 65497831289
Status : Not Answered
Chosen Option : --

Q.15 मुगल सा टों के शासन काल में, कथक मूल रूप से निम्न के दरबारों में दो 'घरानों' में विकसित हुआ:

- Ans
- 1. ग्वालियर और आगरा
 - 2. किराना और पटियाला
 - 3. जयपुर और लखनऊ
 - 4. इंदौर और मेवाड़

Question ID : 65497831296
Status : Not Answered
Chosen Option : --

Q.16 In November 2020, Prime Minister Narendra Modi unveiled a statue of ____ via video conferencing at the Jawaharlal Nehru University campus in Delhi.

- Ans
- 1. Swami Vivekananda
 - 2. Ramakrishna Paramahansa
 - 3. Bhagat Singh
 - 4. Mangal Pandey

Question ID : 65497831303
Status : Answered
Chosen Option : 1

Q.17 Which of the following statements about the Mahalwari system of revenue settlement is INCORRECT?

- Ans
- 1. The right to collect the revenue and pay it to the East India Company was given to the Zamindars.
 - 2. The system was devised by Holt Mackenzie.
 - 3. Land revenue under the system was revised from time to time.
 - 4. The system was introduced in 1822.

Question ID : 65497831307
Status : Answered
Chosen Option : 1

Q.18 In July 2020, which of the following ministries launched the 'Manodarpan' initiative under the Atmanirbhar Bharat Abhiyan?

- Ans
- 1. Ministry of Defence
 - 2. Ministry of Health and Family Welfare
 - 3. Ministry of Education
 - 4. Ministry of Tribal Affairs

Question ID : 65497831288
Status : Not Answered
Chosen Option : --

Q.19 India won _____ bronze medals at the (2020) Olympic Games held in Tokyo in 2021.

- Ans
- 1. 5
 - 2. 4
 - 3. 7
 - 4. 3

Question ID : 65497831305
Status : Answered
Chosen Option : 2

Q.20 Bengal broke away from Mughal control under _____, who was deputy to the governor of the province.

- Ans
- 1. Shaista Khan
 - 2. Qasim Khan
 - 3. Farrukh Siyar
 - 4. Murshid Quli Khan

Question ID : 65497831300
Status : Not Answered
Chosen Option : --

Q.21 कूचेम और कच रेम नामक शहर किस भारतीय राज्य में स्थित हैं?

- Ans
- 1. कर्नाटक
 - 2. सिक्किम
 - 3. गोवा
 - 4. मणिपुर

Question ID : 65497831304
Status : Not Answered
Chosen Option : --

Q.22 Who among the following won Chess.com's 2020 Junior Speed Online Chess Championship?

- Ans
- 1. Nihal Sarin
 - 2. Anton Smirnov
 - 3. Alexey Sarana
 - 4. Andrew Tang

Question ID : 65497831285
Status : Not Answered
Chosen Option : --

Q.23 GVA is the measure of the value of goods and services produced in an area, industry or sector of an economy. What is the full form of GVA?

- Ans
- 1. Growth Value Added
 - 2. Growth Value Asset
 - 3. Gross Value Added
 - 4. Gross Value Asset

Question ID : 65497831294
Status : Answered
Chosen Option : 4

Q.24 भारत का सबसे लंबा नदी पुल, ढोला-सादिया निम्नलिखित में से किस नदी पर बनाया जा रहा है?

- Ans
- 1. गंगा
 - 2. यमुना
 - 3. गोदावरी
 - 4. ब्रह्मपुत्र

Question ID : 65497831293
Status : Not Answered
Chosen Option : --

Q.25 With which sports do you associate the India international, KM Beenamol?

- Ans
- 1. Athletics
 - 2. Wrestling
 - 3. Table Tennis
 - 4. Badminton

Question ID : 65497831292
Status : Not Answered
Chosen Option : --

Section : Part C Elementary Mathematics

Q.1 A lent ₹26,000 to B for 2 years and ₹15,000 to C for 4 years. He received altogether ₹8,960 as simple interest from both. What is the interest rate?

- Ans
- 1. 7%
 - 2. 7.5%
 - 3. 8%
 - 4. 8.5%

Question ID : 65497831311
Status : Answered
Chosen Option : 3

Q.2 An article is marked 60% above its cost price. If a profit of 20% is made by selling the article, then what is the discount percentage offered on its marked price?

- Ans**
- 1. 25%
 - 2. 20%
 - 3. 40%
 - 4. $12\frac{1}{2}\%$

Question ID : 65497831327
Status : Answered
Chosen Option : 1

Q.3 Twenty-five men take 16 days to complete a certain work working 6 hours a day. How many men will be required to complete the work in 5 days working 8 hours a day?

- Ans**
- 1. 56
 - 2. 60
 - 3. 54
 - 4. 68

Question ID : 65497831334
Status : Answered
Chosen Option : 2

Q.4 36 litres of a mixture contains milk and water in the ratio 3 : 1. If 5 litres of this mixture is replaced by 5 litres of milk, then find the ratio of milk to water in the new mixture.

- Ans**
- 1. 3 : 7
 - 2. 3 : 5
 - 3. 8 : 1
 - 4. 5 : 2

Question ID : 65497831324
Status : Answered
Chosen Option : 3

Q.5 A shopkeeper marks his goods 20% above the cost price. He sells one-fourth of the goods at the marked price and the remaining at 30% discount on the marked price. What is his gain/loss percentage?

- Ans**
- 1. Gain 7%
 - 2. Gain 11%
 - 3. Loss 7%
 - 4. Loss 11%

Question ID : 65497831314
Status : Answered
Chosen Option : 3

Q.6 The marked price of an article is ₹900. If a shopkeeper sold the article at 20% loss after giving 36% discount, then the cost price of the article is:

- Ans
- 1. ₹620
 - 2. ₹740
 - 3. ₹720
 - 4. ₹760

Question ID : 65497831331
Status : Answered
Chosen Option : 3

Q.7 Find the LCM of $\frac{2}{3}$, $\frac{4}{7}$ and $\frac{9}{13}$.

- Ans
- 1. 28
 - 2. 12
 - 3. 36
 - 4. 15

Question ID : 65497831320
Status : Answered
Chosen Option : 3

Q.8 Simplify $\left[3\frac{1}{4} \div \left\{1\frac{1}{4} - \frac{1}{2}\left(2\frac{1}{2} - \frac{1}{4} - \frac{1}{6}\right)\right\}\right] \div \left(\frac{1}{5} \text{ of } 4\frac{1}{3}\right) - 2 \times 3 \div 6 \text{ of } \frac{1}{3}$.

- Ans
- 1. 90
 - 2. 87
 - 3. 84
 - 4. 36

Question ID : 65497831312
Status : Answered
Chosen Option : 1

Q.9 If 30% of $(x - y) = 20\%$ of $(x + y)$, then what per cent of x is y ?

- Ans
- 1. 24%
 - 2. 20%
 - 3. 15%
 - 4. 35%

Question ID : 65497831323
Status : Answered
Chosen Option : 2

Q.10 If the perimeter of a rectangle is 50 cm and its diagonal is 23 cm long, then what is the area of the rectangle?

- Ans**
- 1. 48 cm²
 - 2. 36 cm²
 - 3. 50 cm²
 - 4. 40 cm²

Question ID : 65497831319
Status : Answered
Chosen Option : 1

Q.11 What is the volume of a right circular cylinder whose area of the base is 40 cm² and the height is 7 cm?

- Ans**
- 1. 140 cm³
 - 2. 240 cm³
 - 3. 280 cm³
 - 4. 160 cm³

Question ID : 65497831316
Status : Answered
Chosen Option : 3

Q.12 The simple interest on a certain sum of money for 2 years at 15% per annum is half of the compound interest on ₹5,000 for 2 years at 10% per annum. What is the sum placed on simple interest?

- Ans**
- 1. ₹2,250
 - 2. ₹2,000
 - 3. ₹1,750
 - 4. ₹1,050

Question ID : 65497831318
Status : Answered
Chosen Option : 3

Q.13 A boat takes 2 hours to cover a certain distance downstream, but it takes $3\frac{1}{4}$ hours to cover the same distance upstream. If the speed of the stream is 5 km/h, then what is the speed (in km/h) of the boat in still water?

- Ans**
- 1. 21
 - 2. 24
 - 3. 18
 - 4. 20

Question ID : 65497831330
Status : Answered
Chosen Option : 1

Q.14 In a class of 80 students, 40% are girls and the rest are boys. The average weight of the boys is 55.5 kg. If the average weight of all the students in the class is 54 kg, then the average weight (in kg) of the girls is:

- Ans**
- 1. 51.75
 - 2. 52
 - 3. 50.25
 - 4. 51

Question ID : 65497831326
 Status : Answered
 Chosen Option : 1

Q.15 The income of A is 40% more than the income of B, and the income of C is 30% less than the total incomes of A and B. The income of A is what per cent less than the income of C?

- Ans**
- 1. 25%
 - 2. 16%
 - 3. $16\frac{2}{3}\%$
 - 4. 20%

Question ID : 65497831328
 Status : Answered
 Chosen Option : 3

Q.16 A vegetable vendor buys vegetables from a wholesale market for ₹4,500. If the overhead expenses are 4% of the cost price, then at what price should he sell the vegetables to earn 15%?

- Ans**
- 1. ₹4,995
 - 2. ₹5,175
 - 3. ₹5,382
 - 4. ₹5,355

Question ID : 65497831310
 Status : Answered
 Chosen Option : 3

Q.17 A train X travelling at a speed of 58 km/h takes 16 seconds to completely cross another train Y travelling at a speed of 50 km/h in the opposite direction. The length of train Y is three times the length of train X. Train Y passes a bridge in 54 seconds. The length (in m) of the bridge is:

- Ans**
- 1. 360
 - 2. 390
 - 3. 750
 - 4. 480

Question ID : 65497831313
 Status : Answered
 Chosen Option : 2

Q.18 Simplify the following expression.

$$5 \div \frac{5}{6} \times 6 - 1 \div \frac{1}{2} \times 2$$

- Ans
- 1. 30
 - 2. 36
 - 3. 0
 - 4. 32

Question ID : 65497831332
Status : Answered
Chosen Option : 4

Q.19 A retailer buys a tricycle for ₹1,125. His overhead expenses are ₹75. If he sells the tricycle for ₹1,380, then what is his profit percentage?

- Ans
- 1. 18%
 - 2. 12.5%
 - 3. 15%
 - 4. 12%

Question ID : 65497831333
Status : Answered
Chosen Option : 3

Q.20 At what rate per cent per annum will a sum of money double in 12 years?

- Ans
- 1. 7%
 - 2. $8\frac{1}{3}\%$
 - 3. $8\frac{2}{3}\%$
 - 4. $7\frac{1}{3}\%$

Question ID : 65497831325
Status : Answered
Chosen Option : 2

Q.21 A can complete a certain task in 18 days, B in 27 days and C in 36 days. A, B and C began to work together, but A left 4 days before and B left 6 days before the completion of the task. For how many days did B work?

- Ans
- 1. 12
 - 2. 6
 - 3. 8
 - 4. 10

Question ID : 65497831329
Status : Answered
Chosen Option : 2

Q.22 The LCM of two numbers is 12 times their HCF. If one of the numbers is 15 and the sum of the HCF and LCM is 65, then find the other number.

- Ans**
- 1. 25
 - 2. 20
 - 3. 30
 - 4. 42

Question ID : 65497831321
 Status : Answered
 Chosen Option : 2

Q.23 If 45% of a number is equal to two-third of another number, what is the ratio of the first number to the second number?

- Ans**
- 1. 9 : 10
 - 2. 40 : 27
 - 3. 40 : 9
 - 4. 30 : 27

Question ID : 65497831315
 Status : Answered
 Chosen Option : 2

Q.24 In a class of 45 students, the average age of the class is 18 years. The average age of 35 students is 15. What is the average age of the remaining 10 students?

- Ans**
- 1. 28.5
 - 2. 25.2
 - 3. 21.70
 - 4. 23.25

Question ID : 65497831322
 Status : Answered
 Chosen Option : 1

Q.25 If $(x + y) : (x - y) = 23 : 3$, what is the value of $\frac{x^2 - y^2}{x^2 + y^2}$?

- Ans**
- 1. $\frac{269}{69}$
 - 2. $\frac{69}{269}$
 - 3. $\frac{165}{269}$
 - 4. $\frac{269}{165}$

Question ID : 65497831317
 Status : Answered
 Chosen Option : 2

Q.1 Select the **INCORRECTLY** spelt word.

- Ans 1. Misanthorpe
 2. Alumni
 3. Mascot
 4. Socialite

Question ID : 65497831339
Status : Answered
Chosen Option : 2

Q.2 The following sentence has been split into four segments. Identify the segment that contains a grammatical error.

Iron is / most useful / than any / other metal.

- Ans 1. most useful
 2. Iron is
 3. than any
 4. other metal

Question ID : 65497831352
Status : Answered
Chosen Option : 1

Q.3 Select the most appropriate **SYNONYM** of the given word.

Seize

- Ans 1. Catch
 2. Offer
 3. Shut
 4. Lose

Question ID : 65497831353
Status : Answered
Chosen Option : 1

Q.4 Select the option that can be used as a one-word substitute for the given group of words.

Song which is sung in a church by a group of singers

- Ans 1. Lullaby
 2. Anthem
 3. Carol
 4. Dirge

Question ID : 65497831338
Status : Answered
Chosen Option : 3

Q.5 Select the option that can be used as a one-word substitute for the given group of words.

Twice a month

- Ans 1. Bimonthly
 2. Monthly
 3. Biennial
 4. Half-yearly

Question ID : 65497831344
Status : Answered
Chosen Option : 1

Q.6 Select the most appropriate ANTONYM of the given word.

Vaguely

- Ans 1. Distinctly
 2. Marginally
 3. Distractedly
 4. Uncertainly

Question ID : 65497831348
Status : Answered
Chosen Option : 1

Q.7 Select the INCORRECTLY spelt word.

- Ans 1. Transleate
 2. Transcend
 3. Transmit
 4. Transpire

Question ID : 65497831346
Status : Answered
Chosen Option : 1

Q.8 Select the most appropriate option to fill in the blank.

Because of the loss of _____ and lack of food, animals are forced to enter villages.

- Ans 1. ecosystem
 2. culture
 3. habitats
 4. grasslands

Question ID : 65497831335
Status : Answered
Chosen Option : 1

Q.9 Select the most appropriate synonym of the given word.

Worth

- Ans 1. Vigour
 2. Roughness
 3. Value
 4. Power

Question ID : 65497831343
Status : Answered
Chosen Option : 3

Q.10 Select the option that can be used as a one-word substitute for the given group of words.

A period of ten years

- Ans 1. Fortnight
 2. Decade
 3. Millennium
 4. Centenary

Question ID : 65497831354
Status : Answered
Chosen Option : 2

Q.11 Fill in the blank with the most appropriate word.

Pallavi gave a _____ smile when she saw her daughter on the stage.

- Ans 1. broad
 2. strong
 3. deep
 4. thick

Question ID : 65497831349
Status : Answered
Chosen Option : 1

Q.12 Select the most appropriate meaning of the given idiom.

Pain in the neck

- Ans 1. Someone or something that is annoying or a nuisance
 2. Some who is forever ill
 3. Someone who is always angry
 4. Someone who is always depressed

Question ID : 65497831345
Status : Answered
Chosen Option : 1

Q.13 The following sentence has been split into four segments. Identify the segment that contains a grammatical error.

Research in the medical field / claims that German measles / usually cause milder / infection than Martian measles.

- Ans
- 1. claims that German measles
 - 2. Research in the medical field
 - 3. infection than Martian measles
 - 4. usually cause milder

Question ID : 65497831336

Status : Answered

Chosen Option : 4

Q.14 Select the option that will improve the underlined part of the given sentence. In case no improvement is needed, select 'No improvement required'.

Hopefully, I will have got my driving license by the end of this year.

- Ans
- 1. had got
 - 2. No improvement required
 - 3. will have get
 - 4. would got

Question ID : 65497831351

Status : Answered

Chosen Option : 2

Q.15 Select the option that will improve the underlined part of the given sentence. In case no improvement is needed, select 'No improvement required'.

Children played cheerfully in the park all day.

- Ans
- 1. cheerfully on
 - 2. cheerful at
 - 3. No improvement required
 - 4. cheerfully between

Question ID : 65497831350

Status : Answered

Chosen Option : 3

Q.16 Select the most appropriate ANTONYM of the given word.

Connect

- Ans
- 1. Affirm
 - 2. Link
 - 3. Demur
 - 4. Detach

Question ID : 65497831337

Status : Answered

Chosen Option : 4

Q.17 Select the most appropriate option to fill in the blank.

The Elizabethan society was extremely _____ and therefore, believed in the existence of ghosts and witches.

- Ans 1. superstitious
 2. enthralling
 3. lovable
 4. industrious

Question ID : 65497831347
 Status : Answered
 Chosen Option : 1

Q.18 Select the most appropriate option that can substitute the underlined segment in the given sentence. If there is no need to substitute it, select 'No substitution required'.

Does the manufacturer have a website where details of the product are available?

- Ans 1. for the product be available
 2. on the product was available
 3. No substitution required
 4. of the product is available

Question ID : 65497831342
 Status : Answered
 Chosen Option : 3

Q.19 The following sentence has been split into four segments. Identify the segment that contains a grammatical error.

People vary greatly / on the way / they appear and / in their personality traits.

- Ans 1. in their personality traits
 2. they appear and
 3. People vary greatly
 4. on the way

Question ID : 65497831341
 Status : Answered
 Chosen Option : 4

Q.20 Select the most appropriate meaning of the given idiom.

Loaded words

- Ans 1. Words that have been used by well-known writers
 2. Words that common people cannot understand
 3. Words that carry more significance than their literal meaning
 4. Words or language that is impolite and rude

Question ID : 65497831340
 Status : Answered
 Chosen Option : 3

Comprehension:

In the following passage, some words have been deleted. Read the passage carefully and select the most appropriate option to fill in each blank.

The Great Indian, or Thar, Desert forms an important southern extension of the Indo-Gangetic Plain. (1)_____ is mostly in north-western India but (2)_____ extends into eastern Pakistan and is (3)_____ an area of gently undulating terrain . Further, (4)_____ it are several areas dominated (5)_____ shifting sand dunes and numerous isolated hills.

SubQuestion No : 21

Q.21 Select the most appropriate option to fill in blank no. 1.

- Ans 1. Where
 2. That
 3. There
 4. It

Question ID : 65497831356

Status : Answered

Chosen Option : 4

Comprehension:

In the following passage, some words have been deleted. Read the passage carefully and select the most appropriate option to fill in each blank.

The Great Indian, or Thar, Desert forms an important southern extension of the Indo-Gangetic Plain. (1)_____ is mostly in north-western India but (2)_____ extends into eastern Pakistan and is (3)_____ an area of gently undulating terrain . Further, (4)_____ it are several areas dominated (5)_____ shifting sand dunes and numerous isolated hills.

SubQuestion No : 22

Q.22 Select the most appropriate option to fill in blank no. 2.

- Ans 1. sometimes
 2. plus
 3. also
 4. moreover

Question ID : 65497831357

Status : Answered

Chosen Option : 4

Comprehension:

In the following passage, some words have been deleted. Read the passage carefully and select the most appropriate option to fill in each blank.

The Great Indian, or Thar, Desert forms an important southern extension of the Indo-Gangetic Plain. (1)_____ is mostly in north-western India but (2)_____ extends into eastern Pakistan and is (3)_____ an area of gently undulating terrain . Further, (4)_____ it are several areas dominated (5)_____ shifting sand dunes and numerous isolated hills.

SubQuestion No : 23

Q.23 Select the most appropriate option to fill in blank no. 3.

- Ans 1. mostly
 2. nearly
 3. closely
 4. quite

Question ID : 65497831358

Status : Answered

Chosen Option : 4

Comprehension:

In the following passage, some words have been deleted. Read the passage carefully and select the most appropriate option to fill in each blank.

The Great Indian, or Thar, Desert forms an important southern extension of the Indo-Gangetic Plain. (1)_____ is mostly in north-western India but (2)_____ extends into eastern Pakistan and is (3)_____ an area of gently undulating terrain . Further, (4)_____ it are several areas dominated (5)_____ shifting sand dunes and numerous isolated hills.

SubQuestion No : 24

Q.24 Select the most appropriate option to fill in blank no. 4.

- Ans 1. above
 2. within
 3. over
 4. interior

Question ID : 65497831359

Status : Answered

Chosen Option : 2

Comprehension:

In the following passage, some words have been deleted. Read the passage carefully and select the most appropriate option to fill in each blank.

The Great Indian, or Thar, Desert forms an important southern extension of the Indo-Gangetic Plain. (1)_____ is mostly in north-western India but (2)_____ extends into eastern Pakistan and is (3)_____ an area of gently undulating terrain . Further, (4)_____ it are several areas dominated (5)_____ shifting sand dunes and numerous isolated hills.

SubQuestion No : 25

Q.25 Select the most appropriate option to fill in blank no. 5.

- Ans 1. through
 2. via
 3. by
 4. beside

Question ID : 65497831360

Status : Answered

Chosen Option : 3

Section : Part D Hindi

Q.1 नीचे दिए वा म.र □ -□थान भरने के लिए सबसे उपयु□ श□ का चयन करें।

चाट पर म□ याँ _____ रही थीं।

- Ans 1. सनसना
 2. भिनभिना
 3. फड़फड़ा
 4. चहचहा

Question ID : 65497831372

Status : Not Answered

Chosen Option : --

Q.2 आकाश में बादल छाये हुए हैं।

कौन-सा शब्द रेखांकित शब्द का पर्याय नहीं है?

- Ans
- 1. पयोधर
 - 2. जलधर
 - 3. वाग्देवी
 - 4. मेघ

Question ID : 65497831376
Status : Not Answered
Chosen Option : --

Q.3 दिए गए वाक्य का वह भाग तय करें जिसमें कोई त्रुटि है। यदि कोई त्रुटि नहीं है, तो 'कोई त्रुटि नहीं है' चुनें।

एक नागरिक को (1)/ अपना कर्तव्य (2)/ निबाहना चाहिए।(3)/ कोई त्रुटि नहीं है(4)

- Ans
- 1. 2
 - 2. 3
 - 3. 1
 - 4. 4

Question ID : 65497831361
Status : Not Answered
Chosen Option : --

Q.4 दिए गये शब्द का निम्न शब्दों में से विलोम नहीं है-

सुख वात्सा

- Ans
- 1. अव्यवस्था
 - 2. सुचारू
 - 3. गड़बड़ी
 - 4. कुव्यवस्था

Question ID : 65497831364
Status : Not Answered
Chosen Option : --

Q.5 'जो इंद्रियों की पहुँच से बाहर हो' वाक्य शब्दों के लिए एक शब्द होगा-

- Ans
- 1. इंद्रियजित
 - 2. इंद्रियातीत
 - 3. ऐंद्रिक
 - 4. इंद्रियनिग्रह

Question ID : 65497831377
Status : Not Answered
Chosen Option : --

Q.6 कम बोलने वाले शब्दों को कौन कहते हैं?

- Ans
- 1. अल्पभाषी
 - 2. वाचाल
 - 3. गूंगा
 - 4. गायक

Question ID : 65497831375
Status : Not Answered
Chosen Option : --

Q.7 सही वर्तनी वाले शब्द का चयन करें।

- Ans
- 1. पेटुक
 - 2. पैतुक
 - 3. पैत्रिक
 - 4. पितुक

Question ID : 65497831370
Status : Not Answered
Chosen Option : --

Q.8 दिये गये वाक्य के लिए एक शब्द दीजिए।

परम्परा से चली आ रही बात या कथा

- Ans
- 1. अविचारित
 - 2. अनुभूत
 - 3. अनुश्रुति
 - 4. पारम्परिक

Question ID : 65497831367
Status : Not Answered
Chosen Option : --

Q.9 दिये गये वाक्य के किस भाग में त्रुटि है?

यह मानसिक दासता सदा काल से चली आ रही है।

- Ans
- 1. चली आ
 - 2. यह मानसिक दासता
 - 3. सदा काल से
 - 4. रही है।

Question ID : 65497831378
Status : Not Answered
Chosen Option : --

Q.10 सही वर्तनी वाले शब्द का चयन करें।

- Ans
- 1. संयास
 - 2. संन्यास
 - 3. सनयास
 - 4. सन्यास

Question ID : 65497831371
Status : Not Answered
Chosen Option : --

Q.11 माँ रसोईघर में बच्चों के लिए खाने कु पका रहि है।

अशुद्ध अंश को पहचानिए।

- Ans
- 1. माँ
 - 2. रसोई घर मे
 - 3. खाने कु पका रहि है।
 - 4. बच्चों के लिए

Question ID : 65497831374
Status : Not Answered
Chosen Option : --

Q.12 दिये गये वाक्यों में रेखांकित अंश को प्रतिस्थापित करने के लिए सबसे उपयुक्त विकल्प का चयन करें।

मैं और मेरे मित्रों को हाकी खेलने का शौक है।

- Ans
- 1. मैंने
 - 2. मैंने को
 - 3. मेरे को
 - 4. मुझे

Question ID : 65497831373
Status : Not Answered
Chosen Option : --

Q.13 'चंचल' का विलोम शब्द होगा-

- Ans
- 1. स्तब्ध
 - 2. अचेत
 - 3. स्थिर
 - 4. अस्थिर

Question ID : 65497831379
Status : Not Answered
Chosen Option : --

Q.14 दिए गए वाक्यों में रेखांकित खंड को प्रतिस्थापित करने के लिए सबसे उपयुक्त विकल्प का चयन करें।
यदि इसे प्रतिस्थापित करने की आवश्यकता नहीं है, तो विकल्प 'किसी बदलाव की आवश्यकता नहीं है' का चयन करें।

आजकल राजनीति बदल गया है।

- Ans
- 1. किसी बदलाव की आवश्यकता नहीं है।
 - 2. बदल गई है
 - 3. बदल गए हैं
 - 4. बदल गई हैं

Question ID : 65497831363
Status : Not Answered
Chosen Option : --

Q.15 रक्तदान को भरने के लिए सबसे उपयुक्त शब्द का चयन करें।

दहेजप्रथा समाज के लिए _____ है।

- Ans
- 1. अपराध
 - 2. सम्मान
 - 3. अपमान
 - 4. अभिशाप

Question ID : 65497831368
Status : Not Answered
Chosen Option : --

Q.16 'अंधेरी रातों वाला पखवारा' वाक्य के लिए उपयुक्त शब्द होगा-

- Ans
- 1. अमावस्या
 - 2. कृष्णपक्ष
 - 3. शुक्लपक्ष
 - 4. मलमास

Question ID : 65497831380
Status : Not Answered
Chosen Option : --

Q.17 निम्न चार विकल्पों में से, उस विकल्प का चयन करें जो दिए गये मुहावरे का अर्थ बता करता है।

'मोहर लगा देना'

- Ans
- 1. दाग लगाना
 - 2. लड़ाई जीत लेना
 - 3. पुष्टि करना
 - 4. निश्चित होना

Question ID : 65497831365
Status : Not Answered
Chosen Option : --

Q.18 दिए गए शब्दों के समानार्थक शब्दों का चयन कीजिए।

सूर्य

- Ans
- 1. मर्यक
 - 2. हिमांशु
 - 3. आदित्य
 - 4. शशधर

Question ID : 65497831362
Status : Not Answered
Chosen Option : --

Q.19 'आँखें दिखाना' मुहावरे का अर्थ बताइए।

- Ans
- 1. रूखापन
 - 2. बहुत गौर से देखना
 - 3. शर्म करना
 - 4. आँखों में रोग होना

Question ID : 65497831366
Status : Not Answered
Chosen Option : --

Q.20 नीचे दिए गए वाक्यों में रक्तसंधान भरने के लिए सबसे उपयुक्त शब्दों का चयन करें।

शर्मिला का ऊंची एड़ी का सैंडल _____ किए जा रहा था।

- Ans
- 1. गटर-गटर
 - 2. खटर-पटर
 - 3. खिटिर-खिटिर
 - 4. पटर-पटर

Question ID : 65497831369
Status : Not Answered
Chosen Option : --

Comprehension:

दिमाग मनुष्य के लिए सुख के साधन बटोर सकता है, मगर संतोष और (1) _____ मनुष्य के हृदय से उत्पन्न होती है। लेकिन मनुष्यता के लिए यह घोर (2) _____ की बात है कि आज आदमी के पास दिल नाम की चीज नहीं रह गयी। उसकी सारी (3) _____ उसका दिमाग हो गया है। दिमाग से तलवार तो वह बहुत (4) _____ निकाल रहा है, लेकिन दिल की गैरहाजिरी में वह यह (5) _____ ही नहीं पा रहा है कि यह तलवार कहाँ गिरायी जानी चाहिए। परिणामतः वह इस तलवार से अपना ही गला काट रहा है।

निम्न प्रश्नों के उत्तर उपरोक्त गद्यांश के आधार पर दीजिए।

SubQuestion No : 21

Q.21 गाँश के रक्तस्थान (1) के लिए सर्वाधिक उपयुक्त शब्द होगा-

- Ans
- 1. शांति
 - 2. मुक्ति
 - 3. प्रगति
 - 4. शक्ति

Question ID : 65497831382

Status : Not Answered

Chosen Option : --

Comprehension:

दिमाग मनुष्य के लिए सुख के साधन बटोर सकता है, मगर संतोष और (1) _____ मनुष्य के हृदय से उत्पन्न होती है। लेकिन मनुष्यता के लिए यह घोर (2) _____ की बात है कि आज आदमी के पास दिल नाम की चीज नहीं रह गयी। उसकी सारी (3) _____ उसका दिमाग हो गया है। दिमाग से तलवार तो वह बहुत (4) _____ निकाल रहा है, लेकिन दिल की गैरहाजिरी में वह यह (5) _____ ही नहीं पा रहा है कि यह तलवार कहाँ गिरायी जानी चाहिए। परिणामतः वह इस तलवार से अपना ही गला काट रहा है।

निम्न प्रश्नों के उत्तर उपरोक्त गद्यांश के आधार पर दीजिए।

SubQuestion No : 22

Q.22 गाँश के रक्तस्थान (2) के लिए सर्वाधिक उपयुक्त शब्द होगा-

- Ans
- 1. अपमान
 - 2. संकट
 - 3. भय
 - 4. हर्ष

Question ID : 65497831383

Status : Not Answered

Chosen Option : --

Comprehension:

दिमाग मनुष्य के लिए सुख के साधन बटोर सकता है, मगर संतोष और (1) _____ मनुष्य के हृदय से उत्पन्न होती है। लेकिन मनुष्यता के लिए यह घोर (2) _____ की बात है कि आज आदमी के पास दिल नाम की चीज नहीं रह गयी। उसकी सारी (3) _____ उसका दिमाग हो गया है। दिमाग से तलवार तो वह बहुत (4) _____ निकाल रहा है, लेकिन दिल की गैरहाजिरी में वह यह (5) _____ ही नहीं पा रहा है कि यह तलवार कहाँ गिरायी जानी चाहिए। परिणामतः वह इस तलवार से अपना ही गला काट रहा है।

निम्न प्रश्नों के उत्तर उपरोक्त गद्यांश के आधार पर दीजिए।

SubQuestion No : 23

Q.23 गाँश के रक्तस्थान (3) के लिए सर्वाधिक उपयुक्त शब्द होगा-

- Ans
- 1. सफलता
 - 2. पूंजी
 - 3. इज्जत
 - 4. मेहनत

Question ID : 65497831384

Status : Not Answered

Chosen Option : --

Comprehension:

दिमाग मनुष्य के लिए सुख के साधन बटोर सकता है, मगर संतोष और (1) _____ मनुष्य के हृदय से उत्पन्न होती है। लेकिन मनुष्यता के लिए यह घोर (2) _____ की बात है कि आज आदमी के पास दिल नाम की चीज नहीं रह गयी। उसकी सारी (3) _____ उसका दिमाग हो गया है। दिमाग से तलवार तो वह बहुत (4) _____ निकाल रहा है, लेकिन दिल की गैरहाजिरी में वह यह (5) _____ ही नहीं पा रहा है कि यह तलवार कहाँ गिरायी जानी चाहिए। परिणामतः वह इस तलवार से अपना ही गला काट रहा है।

निम्न प्रश्नों के उत्तर उपरोक्त गद्यांश के आधार पर दीजिए।

SubQuestion No : 24

Q.24 गाँश के रक्त स्थान (4) के लिए सर्वाधिक उपयुक्त शब्द होगा-

- Ans
- 1. नुकीली
 - 2. सुंदर
 - 3. चटक
 - 4. तीखी

Question ID : 65497831385

Status : Not Answered

Chosen Option : --

Comprehension:

दिमाग मनुष्य के लिए सुख के साधन बटोर सकता है, मगर संतोष और (1) _____ मनुष्य के हृदय से उत्पन्न होती है। लेकिन मनुष्यता के लिए यह घोर (2) _____ की बात है कि आज आदमी के पास दिल नाम की चीज नहीं रह गयी। उसकी सारी (3) _____ उसका दिमाग हो गया है। दिमाग से तलवार तो वह बहुत (4) _____ निकाल रहा है, लेकिन दिल की गैरहाजिरी में वह यह (5) _____ ही नहीं पा रहा है कि यह तलवार कहाँ गिरायी जानी चाहिए। परिणामतः वह इस तलवार से अपना ही गला काट रहा है।

निम्न प्रश्नों के उत्तर उपरोक्त गद्यांश के आधार पर दीजिए।

SubQuestion No : 25

Q.25 गाँश के रक्त स्थान (5) के लिए सर्वाधिक उपयुक्त शब्द होगा-

- Ans
- 1. देख
 - 2. समझ
 - 3. मान
 - 4. सुन

Question ID : 65497831386

Status : Not Answered

Chosen Option : --

Exam Date	29/11/2021
Exam Time :	4:00 PM - 5:30 PM
Subject	Constable GD 2021

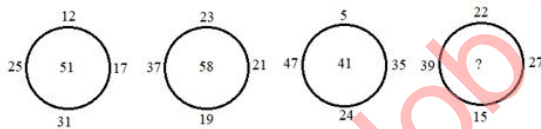
Section : Part A General Intelligence and Reasoning

Q.1 In a festival sale, seven cars of different companies - A, B, C, D, E, F and G - are standing facing west. A is second to the left of B. B is third to the left of C. D is between F and B. C, which is fourth to the right of G, is at one end. Which of the following is the correct position of E?

- Ans 1. Third to the left of B
 2. Fourth to the left of A
 3. Second to right of C
 4. Fifth to the right of G

Question ID : 65497829625
 Status : Answered
 Chosen Option : 1

Q.2 Study the given pattern carefully and select the number that can replace the question mark (?) in it.



- Ans 1. 51
 2. 45
 3. 49
 4. 53

Question ID : 65497829619
 Status : Answered
 Chosen Option : 2

Q.3 Select the option that is related to the third number in the same way as the second number is related to the first number.

8 : 73 :: 9 : ?


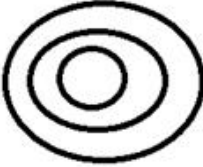


- Ans 1. 100
 2. 91
 3. 8
 4. 98

Question ID : 65497829626
 Status : Answered
 Chosen Option : 2

Q.4 Select the Venn diagram that best represents the relationship between the following classes.

Men, Entrepreneurs, Philanthropists

Ans

- ✓ 1. 
- ✗ 2. 
- ✗ 3. 
- ✗ 4. 

Question ID : 65497829624
 Status : Answered
 Chosen Option : 1

Q.5 Select the correct option that indicates the arrangement of the given words in the order in which they appear in an English dictionary.

- 1. Thought
- 2. Throating
- 3. Throttlehold
- 4. Thorough
- 5. Thrombocyte

- Ans
- ✓ 1. 4, 1, 2, 5, 3
 - ✗ 2. 1, 4, 2, 3, 5
 - ✗ 3. 1, 4, 2, 5, 3
 - ✗ 4. 4, 1, 2, 3, 5

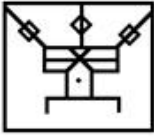
Question ID : 65497829609
 Status : Answered
 Chosen Option : 1

Q.6 Select the option in which the given figure is embedded (rotation is NOT allowed).

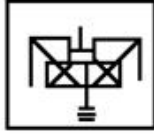


Ans

✗ 1.



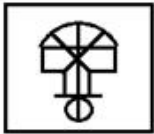
✓ 2.



✗ 3.



✗ 4.



Question ID : 65497829629

Status : Answered

Chosen Option : 4

Q.7 Read the given statements and conclusions carefully. Assuming that the information given in the statements is true, even if it appears to be at variance with commonly known facts, decide which of the given conclusions logically follow(s) from the statements.

Statements:

All woods are bottles.

All bottles are curtains.

Conclusions:

I. All curtains are bottles.

II. Some bottles are woods.

Ans

✗ 1. Only conclusion I follows

✓ 2. Only conclusion II follows

✗ 3. Either conclusion I or II follows

✗ 4. Both conclusions I and II follow

Question ID : 65497829617

Status : Answered

Chosen Option : 2

Q.8 Select the letter-cluster from among the given options that can replace the question mark (?) in the following series.

SLOW, UNMU, WPKS, YRIQ, ?

- Ans
- 1. WUKO
 - 2. APKO
 - 3. ATGO
 - 4. WTGS

Question ID : 65497829621
Status : Answered
Chosen Option : 3

Q.9 Select the option that is related to the third letter-cluster in the same way as the second letter-cluster is related to the first letter-cluster.

FGYJK : KJYGF :: LMQBG : ?

- Ans
- 1. GCPNM
 - 2. GBQML
 - 3. HCRNM
 - 4. HBQNL

Question ID : 65497829613
Status : Answered
Chosen Option : 2

Q.10 Five members, the Director, Producer, Script writer, Choreographer and Set designer, of a film production team are sitting in a row facing towards the north. The Director is sitting next to the Producer. The Script writer is sitting next to the Choreographer. The Choreographer is not sitting with the Set designer, who is at the left end of the row. The Script writer is at the second position from the right. The Director is to the right of the Producer and Set designer. The Director and Script writer are sitting together. In which of the following positions is the Director sitting?

- Ans
- 1. Between the Scriptwriter and the Set designer
 - 2. Between the Producer and the Scriptwriter
 - 3. Between the Set designer and the Choreographer
 - 4. Between the Producer and the Choreographer

Question ID : 65497829623
Status : Not Answered
Chosen Option : --

Q.11 Select the number from among the given options that can replace the question mark (?) in the following series.

12, 3, 24, 6, 36, 9, ?

- Ans
- 1. 54
 - 2. 12
 - 3. 48
 - 4. 60

Question ID : 65497829611
Status : Answered
Chosen Option : 3

Q.12 Select the combination of letters that when sequentially placed in the blanks of the given series will complete the sequence.

_ P _ L I P _ L _ _ N L

- Ans 1. PNLLI
 2. INNIP
 3. IPPIP
 4. INLII

Question ID : 65497829610
 Status : Answered
 Chosen Option : 2

Q.13 Study the given pattern carefully and select the number that can replace the question mark (?) in it.

23 63 34
 31 ? 28
 27 63 18

- Ans 1. 76
 2. 71
 3. 67
 4. 63

Question ID : 65497829618
 Status : Not Answered
 Chosen Option : --

Q.14 In a certain code language, 'CONVERT' is coded as '34142221820', and 'FORTUNE' is coded as '6418205142'. How will 'ACQUIRE' be coded in that language?

- Ans 1. 131759185
 2. 1317219185
 3. 131753185
 4. 131753182

Question ID : 65497829631
 Status : Answered
 Chosen Option : 1

Q.15 Select the correct mirror image of the given combination when the mirror is placed at PQ as shown.

HEADLINES 

- Ans 1. HEVDLINEŠ
 2. HVEDLINEŠ
 3. ŠEVDLINEŠ
 4. ŠVEDLINEŠ

Question ID : 65497829633
 Status : Answered
 Chosen Option : 3

Q.16 'Belgium' is related to 'Euro' in the same way as 'Slovakia' is related to '_____'.
 Ans 1. Euro
 2. Riel
 3. Ruble
 4. Dollar

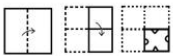
Question ID : 65497829622
 Status : Answered
 Chosen Option : 1





Q.17 In a certain code language, 'WORD' is written as 'DLIW' and 'NOUN' is written as 'MLFM'. How will 'VERB' be written in that language?
 Ans 1. EWIX
 2. EVIY
 3. GVIX
 4. FUJY

Question ID : 65497829614
 Status : Answered
 Chosen Option : 2

Q.18 Pointing to a photograph, a woman said to a man, "She is the wife of the only son of your brother's grandfather." How is the woman in the photograph related to the man?
 Ans 1. Mother
 2. Sister
 3. Aunt
 4. Grandmother

Question ID : 65497829615
 Status : Answered
 Chosen Option : 1

Q.19 The sequence of folding a piece of paper and the manner in which the folded paper has been cut is shown in the following figures. How would this paper look when unfolded?


Ans 1. 
 2. 
 3. 
 4. 

Question ID : 65497829620
 Status : Answered
 Chosen Option : 2

Q.20 Three different positions of the same dice are shown. Select the number that will be on the face opposite to the one having '1'.



- Ans
- 1. 3
 - 2. 5
 - 3. 4
 - 4. 6

Question ID : 65497829628
 Status : Answered
 Chosen Option : 1

Q.21 If '+' means 'subtraction', '÷' means 'addition', '<' means 'multiplication' and '>' means 'division', then find the value of ' $79 \div 11 < 18 > (6 > 3) + 9$ '.

- Ans
- 1. 81
 - 2. 169
 - 3. 109
 - 4. 121

Question ID : 65497829627
 Status : Answered
 Chosen Option : 2

Q.22 Four letter-clusters have been given, out of which three are alike in some manner and one is different. Select the letter-cluster that is different.

- Ans
- 1. QORM
 - 2. FDGB
 - 3. XVYS
 - 4. TRUP

Question ID : 65497829630
 Status : Answered
 Chosen Option : 1

Q.23 Select the figure that will replace the question mark (?) in the following figure series.



Ans



Question ID : 65497829612
 Status : Answered
 Chosen Option : 2

Q.24 In a certain code language, 'ANGUISH' is written as 'BOIWLVL'. How will 'DICTATOR' be written in that language?

- Ans
- ✗ 1. EJFVDVSV
 - ✗ 2. EJEVDWSW
 - ✗ 3. EJFUDWSV
 - ✓ 4. EJEVDWSV

Question ID : 65497829616
 Status : Answered
 Chosen Option : 4

Q.25 Select the number from among the given options that can replace the question mark (?) in the following series.

4, 22, 47, 83, 132, 198, 283, ?

- Ans
- ✗ 1. 319
 - ✓ 2. 391
 - ✗ 3. 491
 - ✗ 4. 419

Question ID : 65497829632
 Status : Not Answered
 Chosen Option : --

Q.1 In 2020, scientists at the Institute of Nano Science and Technology (INST) developed a simple and economical treatment for _____ using the drug Aspirin.

- Ans
- 1. polio
 - 2. asthma
 - 3. diabetes
 - 4. cataract

Question ID : 65497829650
Status : Answered
Chosen Option : 2

Q.2 The Natya Shastra describes stringed instruments as ' _____ Vadya'.

- Ans
- 1. Avanaddha
 - 2. Sushir
 - 3. Ghan
 - 4. Tat

Question ID : 65497829648
Status : Answered
Chosen Option : 4

Q.3 Which form of music is the legendary 'Lalon Fakir' associated with?

- Ans
- 1. Thumri
 - 2. Qawwali
 - 3. Sufi
 - 4. Baul

Question ID : 65497829654
Status : Not Answered
Chosen Option : --

Q.4 The cotton textiles 'Calico' originated from the present-day state of _____.

- Ans
- 1. Goa
 - 2. Tamil Nadu
 - 3. Karnataka
 - 4. Kerala

Question ID : 65497829640
Status : Answered
Chosen Option : 4

Q.5 Who wrote the book 'India: An Introduction'?

- Ans
- 1. Lal Krishna Advani
 - 2. Khushwant Singh
 - 3. Jairam Ramesh
 - 4. APJ Abdul Kalam

Question ID : 65497829656
Status : Not Answered
Chosen Option : --

Q.6 Which of the following statements is FALSE?

- Ans
- 1. Iodine is a lustrous non-metal.
 - 2. Carbon is a non-metal.
 - 3. Lithium has a high density.
 - 4. Sodium can catch fire if left in the open.

Question ID : 65497829649
Status : Answered
Chosen Option : 1

Q.7 Who according to the tribals of Chota Nagpur were referred to as the 'Dikus'?

- Ans
- 1. Slaves
 - 2. Predators
 - 3. Outsiders
 - 4. Warriors

Question ID : 65497829639
Status : Not Answered
Chosen Option : --

Q.8 The International Day of Commemoration and Dignity of the Victims of the Crime of Genocide and of the Prevention of this crime is observed annually on:

- Ans
- 1. 9 December
 - 2. 9 October
 - 3. 9 November
 - 4. 9 September

Question ID : 65497829637
Status : Answered
Chosen Option : 4

Q.9 As stated by the Minister of State for Finance, Shri. Pankaj Chaudhary, in Lok Sabha on 19 July 2021, India is the _____ largest holder of foreign exchange reserves in the world.

- Ans
- 1. fourth
 - 2. fifth
 - 3. ninth
 - 4. seventh

Question ID : 65497829658
Status : Answered
Chosen Option : 1

Q.10 Which among the following is observed as the Constitution Day of India?

- Ans
- 1. 26 November
 - 2. 28 November
 - 3. 27 November
 - 4. 29 November

Question ID : 65497829641
Status : Answered
Chosen Option : 1

Q.11 Who among the following was appointed as the new independent Chairman of the International Cricket Council (ICC) in November 2020?

- Ans
- 1. N Srinivasan
 - 2. Greg Barclay
 - 3. Shashank Manohar
 - 4. Imran Khwaja

Question ID : 65497829634
 Status : Answered
 Chosen Option : 2

Q.12 _____ is a method of soil conservation.

- Ans
- 1. Terrace farming
 - 2. Nomadic farming
 - 3. Shelter farming
 - 4. hydroponic farming

Question ID : 65497829652
 Status : Not Answered
 Chosen Option : --

Q.13 The Constitution of India lays down rules that guard against the misuse of power by our political leaders. Many of these laws are contained in the section on _____.

- Ans
- 1. Fundamental Rights
 - 2. Fundamental Duties
 - 3. Directive Principles
 - 4. Relations between the Union and the States

Question ID : 65497829646
 Status : Answered
 Chosen Option : 4

Q.14 Dominic Thiem is a professional tennis player from _____.

- Ans
- 1. Austria
 - 2. Russia
 - 3. Spain
 - 4. Germany

Question ID : 65497829657
 Status : Answered
 Chosen Option : 1

Q.15 Which of the following is NOT considered as a type of foul in the game of hockey?

- Ans
- 1. Against the player who raises the stick dangerously near another player
 - 2. Against the player who uses their stick to hit an opponent's stick
 - 3. Against the player who hits the ball using the flat side of the stick
 - 4. Against the player who uses their body or stick to prevent opponent from reaching the ball

Question ID : 65497829653
 Status : Not Answered
 Chosen Option : --

Q.16 Who among the following is the author of the book 'A Fine Balance'?

- Ans 1. Shashi Tharoor
 2. Rohinton Mistry
 3. Jhumpa Lahiri
 4. Arundhati Roy

Question ID : 65497829651
 Status : Not Answered
 Chosen Option : --

Q.17 In September 2020, the Government of Australia appointed former cricketer Matthew Hayden and Indian origin politician _____ as trade envoys for advancing business ties with India.

- Ans 1. Kaushaliya Vaghela
 2. Deepak Raj Gupta
 3. Dave Sharma
 4. Lisa Singh

Question ID : 65497829647
 Status : Answered
 Chosen Option : 4

Q.18 Herpes in humans is a:

- Ans 1. parasitic disease
 2. fungal disease
 3. viral disease
 4. bacterial disease

Question ID : 65497829635
 Status : Answered
 Chosen Option : 2

Q.19 Who among the following foreign travellers was an Italian merchant who visited the Vijayanagara Kingdom?

- Ans 1. Niccola de Conti
 2. Fernao Nuniz
 3. Duarte Barbosa
 4. Marco Ricci

Question ID : 65497829645
 Status : Answered
 Chosen Option : 1

Q.20 A mature tropical cyclone is characterised by the strong spirally circulating wind around the centre, called the _____.

- Ans 1. head
 2. heart
 3. nose
 4. eye

Question ID : 65497829638
 Status : Answered
 Chosen Option : 4

Q.21 Why is Bodh Gaya an important Buddhist pilgrimage centre?

- Ans
- 1. Gautam Buddha preached his first sermon here after attaining enlightenment.
 - 2. Gautam Buddha attained parinirvana here.
 - 3. Gautam Buddha attained enlightenment here.
 - 4. Gautam Buddha was born here.

Question ID : 65497829636
 Status : Answered
 Chosen Option : 3

Q.22 When an organisation is unable to honour its financial obligations or make payment to its creditors, it files for _____ in the court.

- Ans
- 1. account payable
 - 2. account receivable
 - 3. debt financing
 - 4. bankruptcy

Question ID : 65497829643
 Status : Answered
 Chosen Option : 4

Q.23 In the Union Budget 2020-21, which of the following schemes was launched to reduce tax litigation?

- Ans
- 1. Vivad Se Vardan
 - 2. Vivad Pe Vishwas
 - 3. Vivad Se Vishwas
 - 4. Vishwas Pe Vishwas

Question ID : 65497829644
 Status : Not Answered
 Chosen Option : --

Q.24 Gorichen is the highest peak in _____.

- Ans
- 1. Arunachal Pradesh
 - 2. Assam
 - 3. Sikkim
 - 4. Manipur

Question ID : 65497829655
 Status : Not Answered
 Chosen Option : --

Q.25 The Sardar Patel Zoological Park in Gujarat was inaugurated on the 30th October 2020 by _____.

- Ans
- 1. Smriti Irani
 - 2. JP Nadda
 - 3. Narendra Modi
 - 4. Amit Shah

Question ID : 65497829642
 Status : Not Answered
 Chosen Option : --

Q.1 The sum of the ages of A, B and C is 66 years. The ratio of the age of A to the combined ages of B and C is 5 : 6. The ratio of the age of B to the combined ages of A and C is 4 : 7. What is the age (in years) of C?

- Ans**
- ✓ 1. 12
 - ✗ 2. 18
 - ✗ 3. 24
 - ✗ 4. 15

Question ID : 65497829681
Status : Answered
Chosen Option : 1

Q.2 Simplify $\frac{2\frac{3}{4} \div \frac{7}{8} \times (\frac{1}{3} + \frac{1}{4}) + \frac{5}{7} \div \frac{3}{4} \text{ of } \frac{3}{7} - \frac{5}{4} \text{ of } \frac{3}{5}}$.

- Ans**
- ✗ 1. $5\frac{1}{36}$
 - ✗ 2. $4\frac{11}{36}$
 - ✓ 3. $2\frac{17}{36}$
 - ✗ 4. $3\frac{5}{36}$

Question ID : 65497829663
Status : Not Answered
Chosen Option : --

Q.3 A और B की आय का अनुपात $x : y$ है। यदि A की आय में 20% की वृद्धि हुई और B की आय में 25% की कमी हुई, तो अनुपात 64 : 45 हो जाएगा। $x : y$ का मान ज्ञात करें।

- Ans**
- ✓ 1. 8 : 9
 - ✗ 2. 4 : 9
 - ✗ 3. 4 : 5
 - ✗ 4. 8 : 15

Question ID : 65497829677
Status : Answered
Chosen Option : 4

Q.4 k is the smallest number of 5-digits, which when divided by 18, 24, 30, 40 and 42, leaves a remainder 7 in each case. The sum of the digits of k is:

- Ans**
- ✗ 1. 9
 - ✗ 2. 7
 - ✓ 3. 16
 - ✗ 4. 11

Question ID : 65497829675
Status : Answered
Chosen Option : 3

Q.5 A path of uniform width of 5 m runs around the outside of a rectangular field 30 m long and 25 m in breadth. What is the area (in m^2) of the path?

- Ans**
- 1. 1400
 - 2. 750
 - 3. 450
 - 4. 650

Question ID : 65497829662
Status : Answered
Chosen Option : 4

Q.6 What is the amount (in ₹) obtained by investing a sum of ₹18,000 at $13\frac{1}{3}\%$ p.a. for $2\frac{1}{4}$ years, if the interest is compounded 9-monthly?

- Ans**
- 1. 23,859
 - 2. 23,895
 - 3. 23,958
 - 4. 23,598

Question ID : 65497829682
Status : Not Answered
Chosen Option : --

Q.7 A lent ₹10,000 to B for 3 years on compound interest at 10% per annum compounded annually. C lent the same amount for the same period to D at 11% simple interest. Who gained more at the end of 3 years and how much?

- Ans**
- 1. A gained ₹376 more
 - 2. C gained ₹10 more
 - 3. A gained ₹10 more
 - 4. C gained ₹300 more

Question ID : 65497829660
Status : Answered
Chosen Option : 3

Q.8 A certain sum amounts to ₹14,160 in 3 years at 6% per annum, at simple interest. What will be the simple interest on the same sum in $4\frac{2}{3}$ years at the same rate of interest?

- Ans**
- 1. ₹3,920
 - 2. ₹3,120
 - 3. ₹3,360
 - 4. ₹2,800

Question ID : 65497829678
Status : Answered
Chosen Option : 3

Q.9 A shopkeeper marked an item at ₹4,000. He earns a profit of 20% after selling it with a 10% discount on the marked price. If he sells it at a price of ₹100 less than the marked price, then what is his profit percentage?

- Ans**
- 1. 30
 - 2. 25
 - 3. 28
 - 4. 20

Question ID : 65497829659
 Status : Answered
 Chosen Option : 1

Q.10 Nine solid metallic spheres of radius 2.5 cm each are melted and recast into a solid cylinder of height 7.5 cm. The curved surface area (in cm^2) of the cylinder is:

- Ans**
- 1. 125π
 - 2. 150π
 - 3. 120π
 - 4. 75π

Question ID : 65497829683
 Status : Answered
 Chosen Option : 4

Q.11 By selling four articles for ₹1,680, a person gains the cost price of four articles. The profit percentage is:

- Ans**
- 1. 120%
 - 2. 100%
 - 3. 90%
 - 4. 75%

Question ID : 65497829666
 Status : Answered
 Chosen Option : 2

Q.12 A person wanted to sell his watch initially at 10% discount to his sister who wants to buy that watch. Later, the person sells it at 12% discount having ₹80 less in his profit. Find the marked price of the watch.

- Ans**
- 1. ₹4,000
 - 2. ₹4,200
 - 3. ₹3,500
 - 4. ₹3,750

Question ID : 65497829680
 Status : Answered
 Chosen Option : 2

Q.13 Gita bought 80 oranges at the rate of ₹9.50 per orange. She sold 25% of these at ₹12 each and one-third of the remaining at ₹10 each. At what price per orange should she sell the remaining oranges to get an overall profit of 25%?

- Ans**
- ✓ 1. ₹12.75
 - ✗ 2. ₹11.50
 - ✗ 3. ₹12
 - ✗ 4. ₹13

Question ID : 65497829679
Status : Not Answered
Chosen Option : --

Q.14 A certain sum of money is divided into three parts in the proportion of 11 : 8 : 5. If the third part is ₹530, what is the sum (in ₹) of the other two parts?

- Ans**
- ✓ 1. 2,014
 - ✗ 2. 1,378
 - ✗ 3. 1,696
 - ✗ 4. 2,544

Question ID : 65497829661
Status : Answered
Chosen Option : 1

Q.15 The value of $3 \times 2 \div 3 \text{ of } 2 \times 3 \div (5 + 5 \times 5 \div 5 \text{ of } 5 - 5 \div 10 \text{ of } \frac{1}{5}) + 2 \div 7 \text{ of } 2$ is:

- Ans**
- ✗ 1. -1
 - ✗ 2. 0
 - ✗ 3. 2
 - ✓ 4. 1

Question ID : 65497829665
Status : Answered
Chosen Option : 4

Q.16 A car covers a distance of 150 km at a uniform speed. The time taken for the journey is two-third of the speed in km/h, in terms of numerical values. The time (in hours) taken to cover the distance of 150 km is:

- Ans**
- ✗ 1. 9
 - ✗ 2. 12
 - ✓ 3. 10
 - ✗ 4. 15

Question ID : 65497829664
Status : Answered
Chosen Option : 3

Q.17 What will be an equivalent discount of two successive discounts of 40% and 30% for an article?

- Ans**
- 1. 38%
 - 2. 42%
 - 3. 35%
 - 4. 58%

Question ID : 65497829671
Status : Answered
Chosen Option : 4

Q.18 The average of four numbers is 10. If the first number is two-third of the second number, the second number is three-fourth of the third number and the third number is four times the fourth number, then what is the third number?

- Ans**
- 1. 4
 - 2. 12
 - 3. 16
 - 4. 8

Question ID : 65497829670
Status : Answered
Chosen Option : 3

Q.19 If 4 men and 5 women can finish a work in 30 days and 6 men and 7 women can finish the same work in 24 days, how many days will it take for one woman alone to finish the two-third of the same work?

- Ans**
- 1. 60
 - 2. 72
 - 3. 70
 - 4. 40

Question ID : 65497829673
Status : Not Answered
Chosen Option : --

Q.20 The speed of a train was increasing by 3 km/h after every one hour for up to 10 hours and then, it was increasing by 5 km/h. If the distance travelled in the first one hour was 40 km, what was the total distance covered by the train in 20 hours?

- Ans**
- 1. 535 km
 - 2. 895 km
 - 3. 1,480 km
 - 4. 800 km

Question ID : 65497829674
Status : Answered
Chosen Option : 2

Q.21 In a college, 80% of students are less than 20 years of age. The number of students more than 20 years of age is $\frac{2}{3}$ of the number of students 20 years of age which is 48. What is the total number of students in the college?

- Ans**
- 1. 200
 - 2. 400
 - 3. 450
 - 4. 300

Question ID : 65497829669
Status : Answered
Chosen Option : 4

Q.22 A and B can complete a piece of work in 12 days and 20 days, respectively. They work together for 6 days. The remaining work is completed by C in 12 days. In how many days will B and C together complete $\frac{2}{3}$ of the same work?

- Ans**
- 1. 15 days
 - 2. 12 days
 - 3. 10 days
 - 4. 8 days

Question ID : 65497829667
Status : Answered
Chosen Option : 2

Q.23 If 15% of a number exceeds 9% of the same number by 33, what is that number?

- Ans**
- 1. 500
 - 2. 590
 - 3. 570
 - 4. 550

Question ID : 65497829672
Status : Answered
Chosen Option : 2

Q.24 Find the largest number which can exactly divide 228, 282 and 288.

- Ans**
- 1. 4
 - 2. 3
 - 3. 8
 - 4. 6

Question ID : 65497829668
Status : Answered
Chosen Option : 4

Q.25 The average of six consecutive even numbers, taken in increasing order, is 107. What is the average of the last three numbers?

- Ans
- 1. 116
 - 2. 108
 - 3. 112
 - 4. 110

Question ID : 65497829676
 Status : Answered
 Chosen Option : 4

Section : Part D English

Q.1 Select the option that can be used as a one-word substitute for the given group of words.

Things which are of the same kind and of the same dimensions

- Ans
- 1. Balanced
 - 2. Pleasant
 - 3. Homogeneous
 - 4. Harmonious

Question ID : 65497829691
 Status : Answered
 Chosen Option : 3

Q.2 Select the most appropriate ANTONYM of the given word.

Rash

- Ans
- 1. Defiant
 - 2. Wayward
 - 3. Unruly
 - 4. Careful

Question ID : 65497829685
 Status : Answered
 Chosen Option : 4

Q.3 Select the option that will improve the underlined part of the sentence. In case no improvement is needed, select 'No improvement required'.

You may either wait at the reception or come back later.

- Ans
- 1. even wait
 - 2. neither wait
 - 3. No improvement required
 - 4. either waiting

Question ID : 65497829692
 Status : Answered
 Chosen Option : 3

Q.4 Select the most appropriate option to fill in the blank.

My brother wants to _____ a career in medicine.

- Ans
- 1. chase
 - 2. pursue
 - 3. aspire
 - 4. aim

Question ID : 65497829700
Status : Answered
Chosen Option : 2

Q.5 Select the most appropriate synonym of the given word.

Rapid

- Ans
- 1. Lumbering
 - 2. Straight
 - 3. Quick
 - 4. Successive

Question ID : 65497829689
Status : Answered
Chosen Option : 3

Q.6 Select the most appropriate meaning of the given idiom.

To lag behind

- Ans
- 1. To fail to maintain the pace or progress
 - 2. To chase someone for long
 - 3. To follow someone as a spy
 - 4. To imitate someone closely

Question ID : 65497829694
Status : Answered
Chosen Option : 1

Q.7 Select the option that can be used as a one-word substitute for the given group of words.

Well-known for bad qualities or deeds

- Ans
- 1. Notorious
 - 2. Burglar
 - 3. Thief
 - 4. Idiot

Question ID : 65497829697
Status : Answered
Chosen Option : 1

Q.8 The following sentence has been split into four segments. Identify the segment that contains a grammatical error.

Jack asked his / friends to send the parcel / on his / new address.

- Ans
- 1. new address
 - 2. Jack asked his
 - 3. friends to send the parcel
 - 4. on his

Question ID : 65497829688
Status : Answered
Chosen Option : 3

Q.9 Select the INCORRECTLY spelt word.

- Ans
- 1. Successfull
 - 2. Strategy
 - 3. Definition
 - 4. Continuously

Question ID : 65497829699
Status : Answered
Chosen Option : 3

Q.10 Select the option that can be used as a one-word substitute for the given group of words.

Land beside a sea

- Ans
- 1. Island
 - 2. Coast
 - 3. Archipelago
 - 4. Peninsula

Question ID : 65497829686
Status : Answered
Chosen Option : 2

Q.11 Select the most appropriate option that can substitute the underlined segment in the given sentence. If there is no need to substitute it, select 'No substitution required'.

We will be in touch with them when the time is arrived.

- Ans
- 1. No substitution required
 - 2. was arrived
 - 3. Arrives
 - 4. Arrived

Question ID : 65497829702
Status : Answered
Chosen Option : 3

Q.12 Select the most appropriate option to fill in the blank.

Customs and traditions play a _____ role in all the societies.

- Ans 1. significant
 2. inspiring
 3. sufficient
 4. refreshing

Question ID : 65497829693
Status : Answered
Chosen Option : 1

Q.13 Parts of the given sentence have been given as options. One of them contains a grammatical error. Select the option that has the error.

The Hindi question paper was extremely tougher for 7th grade students.

- Ans 1. tougher
 2. The Hindi question paper
 3. for 7th grade students
 4. was extremely

Question ID : 65497829695
Status : Answered
Chosen Option : 1

Q.14 Select the most appropriate meaning of the given idiom.

Lap up

- Ans 1. Eat something slowly
 2. Go around a circle
 3. Move up very fast
 4. Accept eagerly

Question ID : 65497829703
Status : Answered
Chosen Option : 2

Q.15 Select the INCORRECTLY spelt word.

- Ans 1. Aluminem
 2. Manufacturing
 3. Excretory
 4. Resistivity

Question ID : 65497829687
Status : Answered
Chosen Option : 1

Q.16 Select the most appropriate option that can substitute the underlined segment in the given sentence. If there is no need to substitute it, select 'No substitution required'.

Your decision to stay home this weekend is more better than mine to go out for dinner.

- Ans
- 1. No substitution required
 - 2. much better than mine
 - 3. most better than mine
 - 4. much better than my

Question ID : 65497829690
Status : Answered
Chosen Option : 2

Q.17 Select the most appropriate ANTONYM of the given word.

Contextual

- Ans
- 1. Circumstantial
 - 2. Unrelated
 - 3. Dependent
 - 4. Provisional

Question ID : 65497829698
Status : Answered
Chosen Option : 2

Q.18 The following sentence has been split into four segments. Identify the segment that contains a grammatical error.

Mother beat Jenny / by a stick / for going out / without permission.

- Ans
- 1. for going out
 - 2. without permission
 - 3. by a stick
 - 4. Mother beat Jenny

Question ID : 65497829684
Status : Answered
Chosen Option : 4

Q.19 Select the most appropriate synonym of the given word.

Fare

- Ans
- 1. Fresh
 - 2. Beautiful
 - 3. Progress
 - 4. Bright

Question ID : 65497829696
Status : Answered
Chosen Option : 4

Q.20 Select the most appropriate option to fill in the blank.

The paintings on the church altar seem to be in need of _____.

- Ans
- 1. renovation
 - 2. redecoration
 - 3. restoration
 - 4. reconstruction

Question ID : 65497829701

Status : Answered

Chosen Option : 1

Comprehension:

In the following passage, some words have been deleted. Read the passage carefully and select the most appropriate option to fill in each blank.

There was a time when storybooks were the only (1) _____ of entertainment for children. A decade or two ago, kids (2) _____ their time reading stories and role playing (3) _____ favourite characters from the stories. (4) _____, times have changed now – in the age of the internet, kids spend (5) _____ of their time playing games on smartphones or watching cartoons or videos on YouTube.

SubQuestion No : 21

Q.21 Select the most appropriate option to fill in blank number 1.

- Ans
- 1. meaning
 - 2. mean
 - 3. meant
 - 4. means

Question ID : 65497829705

Status : Answered

Chosen Option : 2

Comprehension:

In the following passage, some words have been deleted. Read the passage carefully and select the most appropriate option to fill in each blank.

There was a time when storybooks were the only (1) _____ of entertainment for children. A decade or two ago, kids (2) _____ their time reading stories and role playing (3) _____ favourite characters from the stories. (4) _____, times have changed now – in the age of the internet, kids spend (5) _____ of their time playing games on smartphones or watching cartoons or videos on YouTube.

SubQuestion No : 22

Q.22 Select the most appropriate option to fill in blank number 2.

- Ans
- 1. are spending
 - 2. spend
 - 3. spent
 - 4. have spent

Question ID : 65497829706

Status : Answered

Chosen Option : 3

Comprehension:

In the following passage, some words have been deleted. Read the passage carefully and select the most appropriate option to fill in each blank.

There was a time when storybooks were the only (1) _____ of entertainment for children. A decade or two ago, kids (2) _____ their time reading stories and role playing (3) _____ favourite characters from the stories. (4) _____, times have changed now – in the age of the internet, kids spend (5) _____ of their time playing games on smartphones or watching cartoons or videos on YouTube.

SubQuestion No : 23

Q.23 Select the most appropriate option to fill in blank number 3.

- Ans 1. her
 2. his
 3. its
 4. their

Question ID : 65497829707
 Status : Answered
 Chosen Option : 4

Comprehension:

In the following passage, some words have been deleted. Read the passage carefully and select the most appropriate option to fill in each blank.

There was a time when storybooks were the only (1) _____ of entertainment for children. A decade or two ago, kids (2) _____ their time reading stories and role playing (3) _____ favourite characters from the stories. (4) _____, times have changed now – in the age of the internet, kids spend (5) _____ of their time playing games on smartphones or watching cartoons or videos on YouTube.

SubQuestion No : 24

Q.24 Select the most appropriate option to fill in blank number 4.

- Ans 1. However
 2. While
 3. Though
 4. In spite

Question ID : 65497829708
 Status : Answered
 Chosen Option : 1

Comprehension:

In the following passage, some words have been deleted. Read the passage carefully and select the most appropriate option to fill in each blank.

There was a time when storybooks were the only (1) _____ of entertainment for children. A decade or two ago, kids (2) _____ their time reading stories and role playing (3) _____ favourite characters from the stories. (4) _____, times have changed now – in the age of the internet, kids spend (5) _____ of their time playing games on smartphones or watching cartoons or videos on YouTube.

SubQuestion No : 25

Q.25 Select the most appropriate option to fill in blank number 5.

- Ans 1. masses
 2. many
 3. most
 4. maximum

Question ID : 65497829709
 Status : Answered
 Chosen Option : 3

Q.1 दिए गए शब्द के विलोम शब्द का चयन करें-

सयमी

- Ans
- 1. विकृत
 - 2. भ्रष्टाचारी
 - 3. दुश्चरित्र
 - 4. व्यभिचारी

Question ID : 65497829716
Status : Not Answered
Chosen Option : --

Q.2 निम्नलिखित में से शुद्ध वर्तनी वाला शब्द कौन सा है?

- Ans
- 1. निर्दर्यी
 - 2. नीर्दय
 - 3. निर्दय
 - 4. निरदय

Question ID : 65497829722
Status : Not Answered
Chosen Option : --

Q.3 दिए गए वाक्य में रेखांकित खंड को प्रतिस्थापित करने के लिए सर्वाधिक उपयुक्त विकल्प का चयन करें। यदि इसे प्रतिस्थापित करने की आवश्यकता नहीं है, तो विकल्प 'किसी बदलाव की आवश्यकता नहीं है' का चयन करें।

स्वतंत्रता संग्राम में हजारों देशवासियों ने अपना प्राण त्याग कर दिया।

- Ans
- 1. अपना प्राण त्याग दिया।
 - 2. अपने प्राण न्योछावर कर दिए।
 - 3. अपने प्राण त्याग दिया।
 - 4. किसी बदलाव की आवश्यकता नहीं है।

Question ID : 65497829719
Status : Not Answered
Chosen Option : --

Q.4 'जिसे जानना आवश्यक हो' वाक्यांश के लिए एक शब्द होगा-

- Ans
- 1. अगेय
 - 2. अज्ञेय
 - 3. गेय
 - 4. ज्ञेय

Question ID : 65497829726
Status : Not Answered
Chosen Option : --

Q.5 दिए गए वाक्य में रेखांकित खंड को प्रतिस्थापित करने के लिए सर्वाधिक उपयुक्त विकल्प का चयन करें। यदि इसे प्रतिस्थापित करने की आवश्यकता नहीं है, तो विकल्प 'किसी बदलाव की आवश्यकता नहीं है' का चयन करें।

इस पुस्तक का छपित मूल्य कितना है?

- Ans
- 1. मुद्रित
 - 2. प्रकाशित
 - 3. छापित
 - 4. किसी बदलाव की आवश्यकता नहीं है।

Question ID : 65497829721
Status : Not Answered
Chosen Option : --

Q.6 'गेह' किसका पर्यायवाची है?

- Ans
- 1. पर्वत
 - 2. बादल
 - 3. आकाश
 - 4. घर

Question ID : 65497829725
Status : Not Answered
Chosen Option : --

Q.7 दिए गए शब्द के विलोम का चयन करें।

छली

- Ans
- 1. निष्फल
 - 2. चंचल
 - 3. अचल
 - 4. निश्चल

Question ID : 65497829712
Status : Not Answered
Chosen Option : --

Q.8 दिए गए वाक्य का वो भाग ज्ञात करें जिसमें कोई त्रुटि है। यदि कोई त्रुटि नहीं है, तो 'कोई त्रुटि नहीं है' चुनें।

मैंने और उसने (1) घूमने (2) जाना है(3) कोई त्रुटि नहीं है (4)

- Ans
- 1. 1
 - 2. 2
 - 3. 3
 - 4. 4

Question ID : 65497829715
Status : Not Answered
Chosen Option : --

Q.9 दिए गये वाक्यांश के लिए एक शब्द दीजिये।

जिसकी कोई उपमा न हो

- Ans
- 1. अद्वितीय
 - 2. अनूठा
 - 3. कल्पनातीत
 - 4. अनुपम

Question ID : 65497829714
Status : Not Answered
Chosen Option : --

Q.10 रिक्त स्थान की पूर्ति करने के लिए सर्वाधिक उपयुक्त शब्द का चयन करें।

कोयल की आवाज़ अत्यधिक _____ होती है।

- Ans
- 1. लचीली
 - 2. कर्णप्रिय
 - 3. कोमल
 - 4. कर्कश

Question ID : 65497829718
Status : Not Answered
Chosen Option : --

Q.11 'नाक कटना' मुहावरे का सही अर्थ है-

- Ans
- 1. हतोत्साहित होना
 - 2. परेशान होना
 - 3. चोट लगना
 - 4. बदनामी होना

Question ID : 65497829727
Status : Not Answered
Chosen Option : --

Q.12 दिए गए वाक्य का वह भाग ज्ञात करें जिसमें कोई त्रुटि है। यदि कोई त्रुटि नहीं है, तो 'कोई त्रुटि नहीं है' चुनें।

अगली गोष्ठी (1)/ मेरे निवास-स्थान में (2)/ होगी। (3)/ कोई त्रुटि नहीं है (4)

- Ans
- 1. 1
 - 2. 3
 - 3. 2
 - 4. 4

Question ID : 65497829710
Status : Not Answered
Chosen Option : --

Q.13 रिक्त स्थान की पूर्ति करने के लिए सर्वाधिक उपयुक्त शब्द का चयन करें।

_____ क्या चाहिए?

- Ans 1. तुम्हें
 2. तुम्हारे को
 3. तुमको
 4. तेरे को

Question ID : 65497829720
 Status : Not Answered
 Chosen Option : --

Q.14 निम्नलिखित प्रश्न में, दिए गए चार विकल्पों में से उस विकल्प का चयन करें, जो मुहावरे के अर्थ को दर्शाता है।

उल्टे पाव लौटना

- Ans 1. निराश लौटना
 2. असभव कार्य करना
 3. विपरीत दिशा में लौटना
 4. दोषी ठहरना

Question ID : 65497829713
 Status : Not Answered
 Chosen Option : --

Q.15 निम्नलिखित में से शुद्ध वर्तनी वाला शब्द कौन सा है?

- Ans 1. अक्षोहिणी
 2. अक्षौहिणी
 3. अक्षौहणी
 4. अक्षोहणी

Question ID : 65497829723
 Status : Not Answered
 Chosen Option : --

Q.16 कौनसा शब्द 'बादल' का समानार्थी शब्द है?

- Ans 1. अबु
 2. अबुज
 3. अबुद
 4. अबुनिधि

Question ID : 65497829711
 Status : Not Answered
 Chosen Option : --

Q.17 रिक्त स्थान की पूर्ति करने के लिए सर्वाधिक उपयुक्त विकल्प का चयन करें।

कक्षा में छात्रों की _____ दर्ज की गई।

- Ans 1. अवस्थिति
 2. अस्मिता
 3. विद्यमानता
 4. उपस्थिति

Question ID : 65497829729
 Status : Not Answered
 Chosen Option : --

Q.18 दिए गए वाक्य में रेखांकित अश को प्रतिस्थापित करने के लिए सर्वाधिक उपयुक्त विकल्प का चयन करें।

लोग बड़ी मात्रा में जमा हो गए।

- Ans 1. सख्या
 2. भीड़
 3. अक
 4. गणना

Question ID : 65497829728
 Status : Not Answered
 Chosen Option : --

Q.19 दिए गये वाक्याश के लिए एक शब्द दीजिये-

जो अपनी हत्या कर लेता है।

- Ans 1. प्रतिघाती
 2. दुर्बल
 3. हत्यारा
 4. आत्मघाती

Question ID : 65497829717
 Status : Not Answered
 Chosen Option : --

Q.20 दिए गए वाक्य के किस भाग में त्रुटि है?

हरिश्चंद्र के सदृश्य कोई सत्यवादी नहीं हुआ।

- Ans 1. सत्यवादी
 2. हरिश्चंद्र के
 3. नहीं हुआ।
 4. सदृश्य कोई

Question ID : 65497829724
 Status : Not Answered
 Chosen Option : --

Comprehension:

दिए गए गद्यांश में से कुछ शब्द हटा दिए गए हैं। दिए गए विकल्पों की सहायता से रिक्त स्थान भरें। प्रत्येक सख्या के लिए सर्वाधिक उपयुक्त विकल्प का चयन करें।

शिशु को यदि हम राष्ट्र की अमूल्य (1) _____ के रूप में देखना चाहते हैं, तो उसे एक ऐसा (2) _____ वातावरण प्रदान करना पड़ेगा, जिसमें निर्बाध गति से उसका (3) _____ विकास हो सके। स्वच्छ, शांत, भयमुक्त और (4) _____ वातावरण में ही शिशु की कोमल (5) _____ सुरक्षित रह सकती है। शिशु की सुकोमल भावनाओं को आघात पहुंचाना सामाजिक अपराध है। गद्यांश के आधार पर उत्तर दीजिए -

SubQuestion No : 21

Q.21 गद्यांश के रिक्त स्थान (1) के लिए सर्वाधिक उपयुक्त शब्द होगा-

- Ans 1. निधि
 2. धरोहर
 3. व्यक्ति
 4. वस्तु

Question ID : 65497829731
 Status : Not Answered
 Chosen Option : --

Comprehension:

दिए गए गद्यांश में से कुछ शब्द हटा दिए गए हैं। दिए गए विकल्पों की सहायता से रिक्त स्थान भरें। प्रत्येक सख्या के लिए सर्वाधिक उपयुक्त विकल्प का चयन करें।

शिशु को यदि हम राष्ट्र की अमूल्य (1) _____ के रूप में देखना चाहते हैं, तो उसे एक ऐसा (2) _____ वातावरण प्रदान करना पड़ेगा, जिसमें निर्बाध गति से उसका (3) _____ विकास हो सके। स्वच्छ, शांत, भयमुक्त और (4) _____ वातावरण में ही शिशु की कोमल (5) _____ सुरक्षित रह सकती है। शिशु की सुकोमल भावनाओं को आघात पहुंचाना सामाजिक अपराध है। गद्यांश के आधार पर उत्तर दीजिए -

SubQuestion No : 22

Q.22 गद्यांश के रिक्त स्थान (2) के लिए सर्वाधिक उपयुक्त शब्द होगा-

- Ans
- 1. निकृष्ट
 - 2. आदर्श
 - 3. सुंदर
 - 4. पतित

Question ID : 65497829732
Status : Not Answered
Chosen Option : --

Comprehension:

दिए गए गद्यांश में से कुछ शब्द हटा दिए गए हैं। दिए गए विकल्पों की सहायता से रिक्त स्थान भरें। प्रत्येक सख्या के लिए सर्वाधिक उपयुक्त विकल्प का चयन करें।

शिशु को यदि हम राष्ट्र की अमूल्य (1) _____ के रूप में देखना चाहते हैं, तो उसे एक ऐसा (2) _____ वातावरण प्रदान करना पड़ेगा, जिसमें निर्बाध गति से उसका (3) _____ विकास हो सके। स्वच्छ, शांत, भयमुक्त और (4) _____ वातावरण में ही शिशु की कोमल (5) _____ सुरक्षित रह सकती है। शिशु की सुकोमल भावनाओं को आघात पहुंचाना सामाजिक अपराध है। गद्यांश के आधार पर उत्तर दीजिए -

SubQuestion No : 23

Q.23 गद्यांश के रिक्त स्थान (3) के लिए सर्वाधिक उपयुक्त शब्द होगा-

- Ans
- 1. उच्च
 - 2. चहुँओर
 - 3. चहुँमुखी
 - 4. विशेष

Question ID : 65497829733
Status : Not Answered
Chosen Option : --

Comprehension:

दिए गए गद्यांश में से कुछ शब्द हटा दिए गए हैं। दिए गए विकल्पों की सहायता से रिक्त स्थान भरें। प्रत्येक सख्या के लिए सर्वाधिक उपयुक्त विकल्प का चयन करें।

शिशु को यदि हम राष्ट्र की अमूल्य (1) _____ के रूप में देखना चाहते हैं, तो उसे एक ऐसा (2) _____ वातावरण प्रदान करना पड़ेगा, जिसमें निर्बाध गति से उसका (3) _____ विकास हो सके। स्वच्छ, शांत, भयमुक्त और (4) _____ वातावरण में ही शिशु की कोमल (5) _____ सुरक्षित रह सकती है। शिशु की सुकोमल भावनाओं को आघात पहुंचाना सामाजिक अपराध है। गद्यांश के आधार पर उत्तर दीजिए -

SubQuestion No : 24

Q.24 गद्यांश के रिक्त स्थान (4) के लिए सर्वाधिक उपयुक्त शब्द होगा-

- Ans
- 1. असुरक्षित
 - 2. स्वास्थ्यप्रद
 - 3. अस्वास्थ्यप्रद
 - 4. दमघोटू

Question ID : 65497829734
Status : Not Answered
Chosen Option : --

Comprehension:

दिए गए गद्यांश में से कुछ शब्द हटा दिए गए हैं। दिए गए विकल्पों की सहायता से रिक्त स्थान भरें। प्रत्येक सख्या के लिए सर्वाधिक उपयुक्त विकल्प का चयन करें।

शिशु को यदि हम राष्ट्र की अमूल्य (1) _____ के रूप में देखना चाहते हैं, तो उसे एक ऐसा (2) _____ वातावरण प्रदान करना पड़ेगा, जिसमें निर्बाध गति से उसका (3) _____ विकास हो सके। स्वच्छ, शांत, भयमुक्त और (4) _____ वातावरण में ही शिशु की कोमल (5) _____ सुरक्षित रह सकती है। शिशु की सुकोमल भावनाओं को आघात पहुंचाना सामाजिक अपराध है। गद्यांश के आधार पर उत्तर दीजिए -

SubQuestion No : 25

Q.25 गद्यांश के रिक्त स्थान (5) के लिए सर्वाधिक उपयुक्त शब्द होगा-

- Ans**
- 1. सपने
 - 2. विचार
 - 3. भावनाएँ
 - 4. व्यक्तित्व

Question ID : 65497829735

Status : Not Answered

Chosen Option : --

KD Job Updates

Exam Date	13/12/2021
Exam Time :	4:00 PM - 5:30 PM
Subject	Constable GD 2021

Section : Part A General Intelligence and Reasoning

Q.1 Select the number from among the given options that can replace the question mark (?) in the following series.

13, 7, 6, ?, 19, 50

- Ans
- 1. 11
 - 2. 10.5
 - 3. 12.5
 - 4. 4.5

Question ID : 65497836227
 Status : Not Answered
 Chosen Option : --

Q.2 A jug of 147 ml volume capacity is to be filled with water by using the minimum number of glasses from among three glasses of 11 ml, 17 ml and 23 ml capacity. The glasses can be used only at their fullest capacity and each glass has to be used at least once. How many minimum number of glasses would be needed to fill the jug fully by using these three glasses?

- Ans
- 1. 9
 - 2. 11
 - 3. 12
 - 4. 10

Question ID : 65497836219
 Status : Marked For Review
 Chosen Option : 1

Q.3 Four letter-clusters have been given, out of which three are alike in some manner and one is different. Select the letter-cluster that is different.

- Ans
- 1. MRF
 - 2. LIP
 - 3. HOT
 - 4. POD

Question ID : 65497836225
 Status : Answered
 Chosen Option : 1

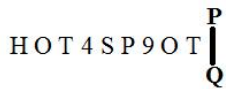
Q.4 Select the set of classes the relationship among which is best represented by the following Venn diagram.



- Ans
- 1. Students, Part-time workers, Girls
 - 2. Engineers, Illiterates, Urban residents
 - 3. Females, Mothers, Sisters
 - 4. Mammals, Human beings, Reptiles

Question ID : 65497836224
 Status : Answered
 Chosen Option : 1

Q.5 Select the correct mirror image of the given combination when the mirror is placed at 'PQ' as shown.



- Ans
- 1. T O e q 2 4 T O H
 - 2. H O L 4 2 B d O L
 - 3. T O 4 q 2 e T O H
 - 4. H O L d 2 B 4 O L

Question ID : 65497836228
 Status : Answered
 Chosen Option : 1

Q.6 In a certain code language, 'FESTIVAL' is written as 'UTFGMBWJ'. How will 'MAJESTIC' be written in that language?

- Ans
- 1. NBKFTUJE
 - 2. FKBNDJUT
 - 3. BNFKUTRX
 - 4. CJURFBKT

Question ID : 65497836214
 Status : Answered
 Chosen Option : 2

Q.7 Select the option in which the given figure is embedded (rotation is NOT allowed).



Ans

✓ 1.



✗ 2.



✗ 3.



✗ 4.



Question ID : 65497836237

Status : Answered

Chosen Option : 1

Q.8 Select the letter-cluster from among the given options that can replace the question mark (?) in the following series.

HK, FM, DO, BQ, ?, XU, VW

Ans ✗ 1. WS

✓ 2. ZS

✗ 3. ZK

✗ 4. AK

Question ID : 65497836221

Status : Answered

Chosen Option : 2

Q.9 What will be the value of the given expression if 'A' means '+', 'B' means '-', 'C' means 'x', and 'D' means '÷'?

50 A 19 B (36 D 2) C 3 A 15 A (10 D 5) = ?

Ans ✗ 1. 44

✗ 2. 40

✓ 3. 32

✗ 4. 28

Question ID : 65497836235

Status : Answered

Chosen Option : 2

Q.10 Select the option that is related to the fourth number in the same way as the first number is related to the second number and the fifth number is related to the sixth number.

60 : 28 :: ? : 41 :: 70 : 33

- Ans
- 1. 94
 - 2. 102
 - 3. 89
 - 4. 86

Question ID : 65497836234
Status : Answered
Chosen Option : 4

Q.11 'Mount Everest' is related to 'Mountain' in the same way as 'Nobel' is related to '_____'.
'_____'

- Ans
- 1. Fame
 - 2. Duty
 - 3. Book
 - 4. Prize

Question ID : 65497836222
Status : Answered
Chosen Option : 4

Q.12 Select the option in which the numbers are related in the same way as are the numbers in the given set.

(64, 51, 38)

- Ans
- 1. (52, 46, 40)
 - 2. (90, 120, 64)
 - 3. (22, 50, 79)
 - 4. (45, 54, 99)

Question ID : 65497836218
Status : Answered
Chosen Option : 1

Q.13 Select the number from among the given options that can replace the question mark (?) in the following series.

7, 13, 25, 43, ?, 97

- Ans
- 1. 67
 - 2. 56
 - 3. 61
 - 4. 63

Question ID : 65497836231
Status : Answered
Chosen Option : 1

Q.14 In a certain code language, 'STORE' is coded as '8712922' and 'PURE' is coded as '116922'. How will 'ASSURED' be written in that language?

- Ans
- 1. 2688982223
 - 2. 2688692223
 - 3. 2695872223
 - 4. 2686982223

Question ID : 65497836226
Status : Answered
Chosen Option : 2

Q.15 Select the option that is related to the third letter-cluster in the same way as the second letter-cluster is related to the first letter-cluster.

QZCT : JAXG :: MRDY : ?

- Ans
- 1. NIHS
 - 2. QUBM
 - 3. GIES
 - 4. NIWB

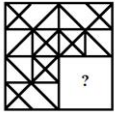
Question ID : 65497836213
Status : Answered
Chosen Option : 4

Q.16 Four persons, Deepak, Gurkiran, Shahid and Vikrant, are sitting around a square shaped table facing the centre. They are sitting in such a way that each person is at the middle of each side of the table. Vikrant is to the immediate right of Deepak. Shahid is facing Vikrant. Who is sitting to the immediate left of Gurkiran?

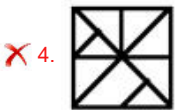
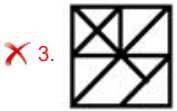
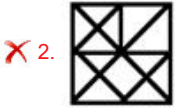
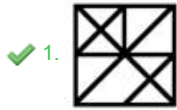
- Ans
- 1. Either Shahid or Deepak
 - 2. V krant
 - 3. Shahid
 - 4. Deepak

Question ID : 65497836223
Status : Answered
Chosen Option : 2

Q.17 Select the figure from among the given options that can replace the question mark (?) in the following series (rotation is NOT allowed).



Ans



Question ID : 65497836232

Status : Answered

Chosen Option : 1

Q.18 Pointing to the photograph of Krip, Poorvi said, "He is my brother's wife's only daughter's paternal grandfather's son." How is Poorvi related to Krip?

Ans ✗ 1. Paternal grandmother

✗ 2. Mother

✗ 3. Daughter

✓ 4. Sister

Question ID : 65497836215

Status : Marked For Review

Chosen Option : 4

Q.19 Read the given statements and conclusions carefully. Assuming that the information given in the statements is true, even if it appears to be at variance with commonly known facts, decide which of the given conclusions logically follow(s) from the statements.

Statements:

1. All nurses are doctors.

2. All doctors are designers.

3. Some nurses are architects.

Conclusions:

I. Some designers are architects.

II. No doctor is an architect.

Ans ✗ 1. Only conclusion II follows

✓ 2. Only conclusion I follows

✗ 3. Both the conclusions follow

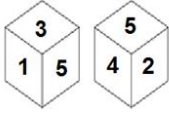
✗ 4. Neither conclusion I nor II follows

Question ID : 65497836217

Status : Answered

Chosen Option : 2

Q.20 Two different positions of the same dice are shown, the six faces of which are numbered 1 to 6. Select the number that will be on the face opposite to the face showing the number '5'.



- Ans
- 1. 1
 - 2. 3
 - 3. 6
 - 4. 2

Question ID : 65497836236
 Status : Answered
 Chosen Option : 3

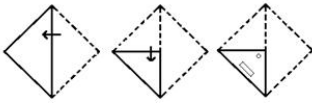
Q.21 K, L, M, N, O, P, Q and R are sitting around a circular table with their backs towards the centre of the table. R is to the immediate left of M, who is second to the left of P. K is at fourth place to the right of P. Q is between L and N. R is second to the right of L. Who is sitting between M and P?

- Ans
- 1. L
 - 2. N
 - 3. O
 - 4. R

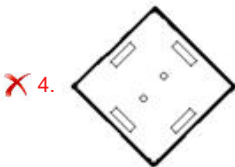
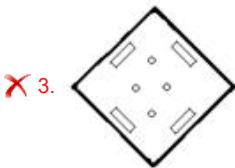
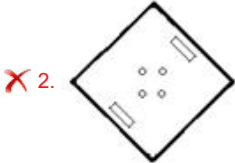
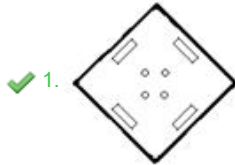
Question ID : 65497836233
 Status : Answered
 Chosen Option : 3

KD Job Updates

Q.22 The sequence of folding a piece of paper and the manner in which the folded paper has been cut is shown in the following figures. How would this paper look when unfolded?



Ans



Question ID : 65497836220
 Status : Answered
 Chosen Option : 1

Q.23 Select the combination of letters that when sequentially placed in the blanks of the given series will complete the series.

P R _ _ U C _ _ R O D U _ _ P R O D _ _ T

- Ans
- ✗ 1. ODCPTCUT
 - ✗ 2. ODPTUTCC
 - ✗ 3. ODTCTPUC
 - ✓ 4. ODTPTUC

Question ID : 65497836230
 Status : Answered
 Chosen Option : 4

Q.24 In a certain code language, 'CAR' is written as 'XZI' and 'TOP' is written as 'GLK'. How will 'FATHER' be written in that language?

- Ans
- ✗ 1. WZGHUI
 - ✗ 2. VZHTKI
 - ✓ 3. UZGSVI
 - ✗ 4. UZHTVJ

Question ID : 65497836216
 Status : Answered
 Chosen Option : 3

Q.25 Select the correct option that indicates the arrangement of the given words in the order in which they appear in an English dictionary.

1. Mosaic
2. Mortise
3. Morpheus
4. Mortified
5. Morris

- Ans 1. 3, 5, 4, 2, 1
 2. 3, 2, 5, 4, 1
 3. 3, 5, 2, 4, 1
 4. 3, 4, 5, 2, 1

Question ID : 65497836229
 Status : Answered
 Chosen Option : 1

Section : Part B General Knowledge and General Awareness

Q.1 What is SIMBEX-20?

- Ans 1. A financial benchmark created to ascertain the growth of the economic relationship between India and Singapore
 2. A bilateral maritime exercise between India and Singapore
 3. A bilateral maritime exercise between India and Saudi Arabia
 4. A financial benchmark created to ascertain the growth of the economic relationship between India and Saudi Arabia

Question ID : 65497836247
 Status : Answered
 Chosen Option : 2

Q.2 Where did India stand in the FIFA world ranking which was revealed in June 2020?

- Ans 1. 107
 2. 106
 3. 108
 4. 105

Question ID : 65497836250
 Status : Not Answered
 Chosen Option : --

Q.3 Which of the following folk dances is performed holding a sword in one hand and a shield in the other?

- Ans 1. Santhal
 2. Jadur
 3. Karma
 4. Paika

Question ID : 65497836258
 Status : Answered
 Chosen Option : 4

Q.4 Which of the following persons does NOT feature in Forbes 'World's Billionaires List', 2021?

- Ans 1. Shiv Nadar
 2. Adar Poonawalla
 3. Radhakishan Damani
 4. Uday Kotak

Question ID : 65497836262
 Status : Not Answered
 Chosen Option : --

Q.5 Which of the following was the title sponsor of the 2020 Women's T20 Challenge (cricket)?

- Ans 1. Paytm
 2. Jio
 3. Dream 11
 4. Unacademy

Question ID : 65497836254
 Status : Answered
 Chosen Option : 2

Q.6 The Bare Necessities Index (BNI) constructed by the Economic Survey 2020-21 integrates 26 indicators across five dimensions. Which of the following is NOT one of them?

- Ans 1. Employment
 2. Sanitation
 3. Housing
 4. Water

Question ID : 65497836259
 Status : Not Answered
 Chosen Option : --

Q.7 In November 2020, Nitish Kumar became the Chief Minister of Bihar for the consecutive _____ time.

- Ans 1. third
 2. second
 3. fourth
 4. fifth

Question ID : 65497836241
 Status : Answered
 Chosen Option : 3

Q.8 Which was the only sector in the Indian economy that showed an increased GVA (Gross Value Added) of 3.4% in the first quarter of 2020?

- Ans 1. Services
 2. Manufacturing
 3. Construction
 4. Agriculture

Question ID : 65497836242
 Status : Answered
 Chosen Option : 4

Q.9 Which Act allows persecution of a person who being abroad refuses to return to India to face criminal prosecution?

- Ans
- 1. Bankers Book Evidence Act, 1891
 - 2. Fugitive Economic Offenders (FEO) Act, 2018
 - 3. The Depositories Act, 1996
 - 4. International Financial Services Centres Authority Act, 2019

Question ID : 65497836240
 Status : Answered
 Chosen Option : 2

Q.10 As of 2015, how many states were the focus of the World Bank funded National Ganga River Basin Projects (NGRBP) of National Mission for Clean Ganga (NMCG)?

- Ans
- 1. Nine
 - 2. Five
 - 3. Seven
 - 4. Three

Question ID : 65497836243
 Status : Answered
 Chosen Option : 2

Q.11 A dendritic drainage pattern is formed _____.

- Ans
- 1. when a river is joined by its tributaries at approximately right angles
 - 2. when the river channel follows the slope of the terrain and with its tributaries resembles the branches of a tree
 - 3. on a strongly jointed rocky terrain
 - 4. when streams flow in different directions from a central peak or dome like structure

Question ID : 65497836252
 Status : Answered
 Chosen Option : 2

Q.12 The first session of the Indian National Congress was held in Bombay in _____ under the Presidentship of Womesh Chandra Banerjee.

- Ans
- 1. December, 1885
 - 2. November, 1906
 - 3. January, 1884
 - 4. October, 1882

Question ID : 65497836245
 Status : Answered
 Chosen Option : 1

Q.13 The Advocate-General holds office during the pleasure of:

- Ans
- 1. the Attorney-General
 - 2. the Prime Minister
 - 3. the Governor
 - 4. the Chief Minister

Question ID : 65497836246
 Status : Answered
 Chosen Option : 1

Q.14 Which of the following nations emerged as the second-biggest source of foreign direct investment (FDI) into India during April-September 2020, according to data by the Ministry of Commerce and Industry in India?

- Ans 1. The US
 2. Japan
 3. France
 4. Mauritius

Question ID : 65497836244
 Status : Answered
 Chosen Option : 4

Q.15 Which mission was initiated by the British Government to India to secure full Indian cooperation for their efforts in World War II?

- Ans 1. Irwin
 2. Simon
 3. Cripps
 4. Cornwallis

Question ID : 65497836239
 Status : Answered
 Chosen Option : 3

Q.16 'A Promised Land' is a book by _____.

- Ans 1. Nelson Mandela
 2. Barack Obama
 3. Milkha Singh
 4. Priyanka Chopra

Question ID : 65497836253
 Status : Answered
 Chosen Option : 2

Q.17 Which of the following terms is NOT associated with the temple architecture in India?

- Ans 1. Vesara
 2. Dravida
 3. Oordhwaka
 4. Nagara

Question ID : 65497836251
 Status : Answered
 Chosen Option : 3

Q.18 निम्न में से किस वृक्ष/पौधे का उपयोग खासी और सर्दी के उपचार में किया जाता है?

- Ans 1. सर्पगंधा
 2. बबूल
 3. तुलसी
 4. कचनार

Question ID : 65497836255
 Status : Answered
 Chosen Option : 3

Q.19 In which year were the islands of Laccadive, Minicoy, and Amindivi changed into Union Territory of Lakshadweep by an Act of Parliament?

- Ans
- 1. 1972
 - 2. 1971
 - 3. 1974
 - 4. 1973

Question ID : 65497836249
Status : Not Answered
Chosen Option : --

Q.20 The 'kharaj' tax imposed by Alauddin Khalji was equal to about _____ % of a peasant's produce.

- Ans
- 1. 10
 - 2. 25
 - 3. 20
 - 4. 50

Question ID : 65497836256
Status : Answered
Chosen Option : 1

Q.21 AG Tansley put forward the concept of _____ in 1935.

- Ans
- 1. ecosystem
 - 2. motion
 - 3. zero
 - 4. respiration

Question ID : 65497836260
Status : Answered
Chosen Option : 1

Q.22 Which of the following statements is CORRECT in relation to chemical bases?

- Ans
- 1. Bases are sticky to touch, sour to taste and corrosive.
 - 2. Bases are soapy to touch, bitter to taste and corrosive.
 - 3. Bases are soapy to touch, sour to taste and corrosive.
 - 4. Bases are sticky to touch, bitter to taste and corrosive.

Question ID : 65497836261
Status : Answered
Chosen Option : 3

Q.23 In which of the following countries is the headquarters of ICC (International Cricket Council) located?

- Ans
- 1. The UAE
 - 2. India
 - 3. Australia
 - 4. The UK

Question ID : 65497836248
Status : Answered
Chosen Option : 1

Q.24 Into how many books (Mandalas) is the Rigveda divided?

- Ans
- 1. 16
 - 2. 10
 - 3. 5
 - 4. 13

Question ID : 65497836238
Status : Answered
Chosen Option : 2

Q.25 The SpaceX Crew Dragon spacecraft launched into orbit in November 2020 had three American and one _____ astronaut onboard.

- Ans
- 1. Japanese
 - 2. South Korean
 - 3. Russian
 - 4. Chinese

Question ID : 65497836257
Status : Answered
Chosen Option : 1

Section : Part C Elementary Mathematics

Q.1 If $a = 2 \times 32 \times 5$, $b = 34 \times 5 \times 7$, $c = 22 \times 3 \times 7$, then what is the LCM of a , b and c ?

- Ans
- 1. 3
 - 2. 3780
 - 3. 5670
 - 4. 11340

Question ID : 65497836268
Status : Answered
Chosen Option : 4

Q.2 A sum of ₹6,400 amounts to ₹8,848 in $4\frac{1}{2}$ years at a certain rate per annum at simple interest. What will be the amount (in ₹) of a sum of ₹9,000 in $2\frac{2}{5}$ years at the same rate at simple interest?

- Ans
- 1. 10,646
 - 2. 10,764
 - 3. 10,836
 - 4. 10,863

Question ID : 65497836285
Status : Answered
Chosen Option : 3

Q.3 The marked price of an article is ₹480. After a discount of 18% on the marked price, a shopkeeper earns a profit of ₹63.60. His percentage gain is:

- Ans
- 1. $19\frac{1}{11}\%$
 - 2. $19\frac{3}{11}\%$
 - 3. $13\frac{1}{4}\%$
 - 4. $13\frac{3}{4}\%$

Question ID : 65497836278

Status : Answered

Chosen Option : 2

Q.4 Solutions A and B contain acid and water in the ratio 3 : 5 and 9 : 7, respectively. Solution A and B are mixed in the ratio 2 : 3. What is the ratio of acid and water in the resulting solution?

- Ans
- 1. 9 : 11
 - 2. 19 : 21
 - 3. 39 : 41
 - 4. 37 : 43

Question ID : 65497836284

Status : Not Answered

Chosen Option : --

Q.5 Two cars are running towards each other at the speeds of 45 km/h and 70 km/h, respectively. What will be the distance between them 12 min before they meet?

- Ans
- 1. 23 km
 - 2. 21 km
 - 3. 22 km
 - 4. 20 km

Question ID : 65497836274

Status : Answered

Chosen Option : 1

Q.6 The amount of a certain sum at simple interest at 15% p.a. in $5\frac{1}{2}$ years is ₹1,755 more than the simple interest on the same sum at the same rate in 10 years. What is the sum (in ₹)?

- Ans
- 1. 5,400
 - 2. 5,500
 - 3. 5,800
 - 4. 5,200

Question ID : 65497836286

Status : Not Answered

Chosen Option : --

Q.7 The speed of B in completing a work is 3 times that of A. If B completes the work in 28 days, then how many days will they take to complete the same work if they work together?

- Ans**
- ✓ 1. 21 days
 - ✗ 2. 22 days
 - ✗ 3. $22\frac{2}{5}$ days
 - ✗ 4. 14 days

Question ID : 65497836266
 Status : Marked For Review
 Chosen Option : 4

Q.8 A trader purchased a room cooler for ₹5,400. After allowing a discount of 25%, he gains 25%. What is the price marked on the room cooler?

- Ans**
- ✗ 1. ₹3,600
 - ✗ 2. ₹6,750
 - ✗ 3. ₹1,350
 - ✓ 4. ₹9,000

Question ID : 65497836271
 Status : Not Answered
 Chosen Option : --

Q.9 Simplify the following expression.

$$(-5) \text{ of } (-45) \div (-15) - (-3) + 5 \times \frac{1}{15}$$

- Ans**
- ✗ 1. $18\frac{1}{3}$
 - ✓ 2. $-11\frac{2}{3}$
 - ✗ 3. $3\frac{74}{225}$
 - ✗ 4. $3\frac{2}{15}$

Question ID : 65497836263
 Status : Answered
 Chosen Option : 2

Q.10 The value of $\frac{5}{6} \div \frac{5}{6}$ of $\frac{5}{6} \times 1\frac{2}{3} + \frac{3}{4} \div \frac{4}{3}$ of $1\frac{1}{2} - 1\frac{1}{2} - \frac{5}{6} \div \frac{3}{4}$ is:

- Ans
- ✓ 1. $\frac{-17}{72}$
 - ✗ 2. $\frac{-29}{18}$
 - ✗ 3. $\frac{7}{8}$
 - ✗ 4. $\frac{28}{9}$

Question ID : 65497836279
 Status : Not Answered
 Chosen Option : --

Q.11 A man sold a radio and a TV set together for ₹20,850, thereby making a profit of 20% on the radio and 15% on the TV set. If he had sold them together for ₹21,450, then he would have made 15% profit on the radio and 20% profit on the TV set. The cost price of the TV set was:

- Ans
- ✗ 1. ₹18,000
 - ✓ 2. ₹15,000
 - ✗ 3. ₹24,000
 - ✗ 4. ₹20,000

Question ID : 65497836275
 Status : Not Answered
 Chosen Option : --

Q.12 The ratio of the sides of a rectangular field is 3 : 2 and its perimeter is 600 m. The area of a square field is 6 times the area of the rectangular field. The perimeter (in m) of the square field is:

- Ans
- ✓ 1. 1440
 - ✗ 2. 1200
 - ✗ 3. 1280
 - ✗ 4. 1120

Question ID : 65497836287
 Status : Not Answered
 Chosen Option : --

Q.13 Two men can complete as much work as 3 women can do in a certain time. Ten men and 6 women can complete a work in 5 days. If 4 men and 9 women work together, then in how many days will they be able to complete the same work?

- Ans
- ✗ 1. 8
 - ✓ 2. 7
 - ✗ 3. $6\frac{1}{2}$
 - ✗ 4. $7\frac{1}{2}$

Question ID : 65497836273
 Status : Not Answered
 Chosen Option : --

Q.14 What is the average of eight smallest even natural numbers which are NOT divisible by 3?

- Ans
- 1. 12
 - 2. 11
 - 3. 9
 - 4. 8

Question ID : 65497836270
 Status : Answered
 Chosen Option : 1

Q.15 If $a : b = 9 : 7$, then what is $(11a-9b) : (2a+3b)$?

- Ans
- 1. 12 : 13
 - 2. 54 : 13
 - 3. 4 : 21
 - 4. 4 : 13

Question ID : 65497836265
 Status : Answered
 Chosen Option : 1

Q.16 What is the total surface area of a hemispherical solid having radius 14 cm?

(Use $\pi = \frac{22}{7}$)

- Ans
- 1. 1232 cm²
 - 2. 616 cm²
 - 3. 2352 cm²
 - 4. 1848 cm²

Question ID : 65497836267
 Status : Answered
 Chosen Option : 4

Q.17 A car was sold for ₹66,000 at a gain of 10%. Had it been sold for ₹600 more, then the percentage gain would have been:

- Ans
- 1. 15%
 - 2. 13%
 - 3. 11.5%
 - 4. 11%

Question ID : 65497836277
 Status : Answered
 Chosen Option : 4

Q.18 If the sum of the simple interest on ₹16,400 for 3 years at the rate of interest R and that on ₹18,000 for 4 years at the same rate R is ₹10,302, then the value of R will be:

- Ans**
- 1. 8%
 - 2. 9%
 - 3. 10.5%
 - 4. 8.5%

Question ID : 65497836276
Status : Answered
Chosen Option : 4

Q.19 A 320 m long train crosses a platform thrice its length in 90 seconds. What is the speed (in km/h) of the train?

- Ans**
- 1. 48
 - 2. 54
 - 3. 50.4
 - 4. 51.2

Question ID : 65497836280
Status : Answered
Chosen Option : 4

Q.20 The value of $25 - 4 \text{ of } (14.4 \div 9) + 16 \times 0.4$ is:

- Ans**
- 1. 5
 - 2. 0
 - 3. 25
 - 4. 20

Question ID : 65497836281
Status : Answered
Chosen Option : 3

Q.21 Six years ago, the ratio of the ages of A and B was 17 : 13, and the ratio of their present ages is 5 : 4. What will be the ratio of their ages after 4 years from now?

- Ans**
- 1. 4 : 3
 - 2. 3 : 2
 - 3. 9 : 5
 - 4. 11 : 9

Question ID : 65497836283
Status : Answered
Chosen Option : 4

Q.22 The average of 19 numbers is 46. The average of the first 5 numbers is 49 and the average of the next 6 numbers is 54. What is the average of the remaining numbers? (Correct to one decimal place)

- Ans**
- 1. 43.5
 - 2. 33.9
 - 3. 42.4
 - 4. 38.1

Question ID : 65497836282
 Status : Answered
 Chosen Option : 4

Q.23 A shopkeeper bought 200 notebooks at the rate of ₹80 for 5. He sold half of them at the cost price and the remaining notebooks at the rate of ₹100 for 5. What is his profit percentage?

- Ans**
- 1. 15%
 - 2. 10%
 - 3. 12.5%
 - 4. 12%

Question ID : 65497836264
 Status : Answered
 Chosen Option : 3

Q.24 A number p increased by $p\%$ of 99 equals 99 increased by 99% of p . What is $(p + 51)\%$ of $928 + 72$?

- Ans**
- 1. 1392
 - 2. 1500
 - 3. 1464
 - 4. 1371.2

Question ID : 65497836269
 Status : Not Answered
 Chosen Option : --

Q.25 If 200% of $k - (k + 2)\%$ of $50 = k$, then what is the value of k ?

- Ans**
- 1. $\frac{2}{3}$
 - 2. $\frac{100}{149}$
 - 3. 2
 - 4. 1

Question ID : 65497836272
 Status : Answered
 Chosen Option : 3

Q.1 The following sentence has been split into four segments. Identify the segment that contains a grammatical error.

When I got back / to the flat, / I found that / I was locked out.

- Ans
- 1. I found that
 - 2. to the flat
 - 3. I was locked out
 - 4. When I got back

Question ID : 65497836302
Status : Not Answered
Chosen Option : --

Q.2 The following sentence has been divided into parts. One of them may contain an error. Select the part that contains the error from the given options. If you don't find any error, mark 'No error' as your answer.

Mr. Sharma is one of / the best teacher / I have ever seen.

- Ans
- 1. the best teacher
 - 2. I have ever seen
 - 3. Mr. Sharma is one of
 - 4. No error

Question ID : 65497836289
Status : Answered
Chosen Option : 1

Q.3 Select the INCORRECTLY spelt word.

- Ans
- 1. Ommitted
 - 2. Committed
 - 3. Remitted
 - 4. Submitted

Question ID : 65497836305
Status : Marked For Review
Chosen Option : 1

Q.4 Select the most appropriate option to fill in the blank.

My grandmother is _____ to the bed.

- Ans
- 1. confined
 - 2. concealed
 - 3. concerned
 - 4. confirmed

Question ID : 65497836307
Status : Not Answered
Chosen Option : --

Q.5 Select the option that can be used as a one-word substitute for the given group of words.

Connected with the sense of touch

- Ans
- 1. Auditory
 - 2. Olfactory
 - 3. Visual
 - 4. Tactile

Question ID : 65497836304
Status : Answered
Chosen Option : 4

Q.6 Select the INCORRECTLY spelt word.

- Ans
- 1. Attention
 - 2. Immediate
 - 3. Appeal
 - 4. Arrogent

Question ID : 65497836306
Status : Answered
Chosen Option : 4

Q.7 Select the most appropriate option that can substitute the underlined word in the given sentence. If there is no need to substitute it, select 'No substitution required'.

There is two pens in the box.

- Ans
- 1. No substitution required
 - 2. have
 - 3. was
 - 4. are

Question ID : 65497836300
Status : Answered
Chosen Option : 4

Q.8 Select the option that will improve the underlined part of the given sentence. In case no improvement is needed, select 'No improvement required'.

What fun is it to ride a rollercoaster with friends!

- Ans
- 1. it is to ride
 - 2. No improvement required
 - 3. it is for riding
 - 4. is it riding

Question ID : 65497836295
Status : Marked For Review
Chosen Option : 2

Q.9 Select the most appropriate meaning of the given idiom.

Out of question

- Ans 1. Wishful
 2. Impossible
 3. Difficult
 4. Doubtful

Question ID : 65497836292
Status : Marked For Review
Chosen Option : 2

Q.10 Select the most appropriate option that can substitute the underlined segment in the given sentence. If there is no need to substitute it, select 'No substitution required'.

She made the shopkeeper to take back the damaged headset.

- Ans 1. take back
 2. taken back
 3. No substitution required
 4. taking back

Question ID : 65497836288
Status : Answered
Chosen Option : 1

Q.11 Select the option that is closest in meaning to the underlined idiom/phrase in the given sentence.

The teacher couldn't make head or tail of the student's answer.

- Ans 1. recommend
 2. understand
 3. overlook
 4. appreciate

Question ID : 65497836301
Status : Marked For Review
Chosen Option : 2

Q.12 Select the most appropriate ANTONYM of the given word.

Severe

- Ans 1. Short
 2. Sharp
 3. Narrow
 4. Mild

Question ID : 65497836293
Status : Answered
Chosen Option : 4

Q.13 Select the most appropriate synonym of the given word.

Bargain

- Ans 1. Deal
 2. Gain
 3. Dispute
 4. Disagreement

Question ID : 65497836297
 Status : Marked For Review
 Chosen Option : 1

Q.14 Select the most appropriate ANTONYM of the given word.

Originate

- Ans 1. Emerge
 2. Terminate
 3. Exist
 4. Continue

Question ID : 65497836303
 Status : Answered
 Chosen Option : 2

Q.15 Select the most appropriate option to fill in the blank.

Traffic _____ is a very serious problem in metro cities.

- Ans 1. congestion
 2. chain
 3. collection
 4. gathering

Question ID : 65497836299
 Status : Answered
 Chosen Option : 1

Q.16 Select the option that can be used as a one-word substitute for the given group of words.

One who makes an eloquent public speech

- Ans 1. Presenter
 2. Lecturer
 3. Orator
 4. Mentor

Question ID : 65497836298
 Status : Answered
 Chosen Option : 3

Q.17 Select the most appropriate option to fill in the blank.

When she _____ the hall, she was pleasantly surprised.

- Ans
- 1. appeared
 - 2. entered
 - 3. intruded
 - 4. arrived

Question ID : 65497836294
 Status : Answered
 Chosen Option : 2

Q.18 Select the most appropriate synonym of the given word.

Common

- Ans
- 1. Usual
 - 2. Scarce
 - 3. Particular
 - 4. Individual

Question ID : 65497836290
 Status : Answered
 Chosen Option : 1

Q.19 The following sentence has been split into four segments. Identify the segment that contains a grammatical error.

She arrived / at / Monday morning / to attend the marriage.

- Ans
- 1. to attend the marriage
 - 2. She arrived
 - 3. Monday morning
 - 4. at

Question ID : 65497836296
 Status : Marked For Review
 Chosen Option : 4

Q.20 Select the option that can be used as a one-word substitute for the given group of words.

Go or come after a person or thing proceeding ahead

- Ans
- 1. Race
 - 2. Follow
 - 3. Hunt
 - 4. Search

Question ID : 65497836291
 Status : Answered
 Chosen Option : 2

Comprehension:

In the following passage, some words have been deleted. Read the passage carefully and select the most appropriate option to fill in each blank.

Riding a bicycle, also called cycling, has a number of health (1)_____. Cycling is an aerobic activity, which means your heart, lungs and blood vessels all get a workout. It also helps (2)_____ stamina and physical strength. Another important advantage is that cycling helps (3)_____ endorphins or the feel-good chemicals in the brain (4)_____ help reduce stress levels. People who (5)_____ cycling as an exercise find that they have more energy for their day-to-day activities.

SubQuestion No : 21

Q.21 Select the most appropriate option to fill in blank no. 1.

- Ans 1. traits
 2. benefits
 3. credits
 4. values

Question ID : 65497836309
 Status : Answered
 Chosen Option : 2

Comprehension:

In the following passage, some words have been deleted. Read the passage carefully and select the most appropriate option to fill in each blank.

Riding a bicycle, also called cycling, has a number of health (1)_____. Cycling is an aerobic activity, which means your heart, lungs and blood vessels all get a workout. It also helps (2)_____ stamina and physical strength. Another important advantage is that cycling helps (3)_____ endorphins or the feel-good chemicals in the brain (4)_____ help reduce stress levels. People who (5)_____ cycling as an exercise find that they have more energy for their day-to-day activities.

SubQuestion No : 22

Q.22 Select the most appropriate option to fill in blank no. 2.

- Ans 1. build
 2. establish
 3. grow
 4. expand

Question ID : 65497836310
 Status : Answered
 Chosen Option : 1

Comprehension:

In the following passage, some words have been deleted. Read the passage carefully and select the most appropriate option to fill in each blank.

Riding a bicycle, also called cycling, has a number of health (1)_____. Cycling is an aerobic activity, which means your heart, lungs and blood vessels all get a workout. It also helps (2)_____ stamina and physical strength. Another important advantage is that cycling helps (3)_____ endorphins or the feel-good chemicals in the brain (4)_____ help reduce stress levels. People who (5)_____ cycling as an exercise find that they have more energy for their day-to-day activities.

SubQuestion No : 23

Q.23 Select the most appropriate option to fill in blank no. 3.

- Ans 1. clear
 2. leak
 3. release
 4. realise

Question ID : 65497836311
 Status : Answered
 Chosen Option : 3

Comprehension:

In the following passage, some words have been deleted. Read the passage carefully and select the most appropriate option to fill in each blank.

Riding a bicycle, also called cycling, has a number of health (1)_____. Cycling is an aerobic activity, which means your heart, lungs and blood vessels all get a workout. It also helps (2)_____ stamina and physical strength. Another important advantage is that cycling helps (3)_____ endorphins or the feel-good chemicals in the brain (4)_____ help reduce stress levels. People who (5)_____ cycling as an exercise find that they have more energy for their day-to-day activities.

SubQuestion No : 24

Q.24 Select the most appropriate option to fill in blank no. 4.

- Ans 1. thus
 2. such
 3. that
 4. who

Question ID : 65497836312
 Status : Marked For Review
 Chosen Option : 3

Comprehension:

In the following passage, some words have been deleted. Read the passage carefully and select the most appropriate option to fill in each blank.

Riding a bicycle, also called cycling, has a number of health (1)_____. Cycling is an aerobic activity, which means your heart, lungs and blood vessels all get a workout. It also helps (2)_____ stamina and physical strength. Another important advantage is that cycling helps (3)_____ endorphins or the feel-good chemicals in the brain (4)_____ help reduce stress levels. People who (5)_____ cycling as an exercise find that they have more energy for their day-to-day activities.

SubQuestion No : 25

Q.25 Select the most appropriate option to fill in blank no. 5.

- Ans 1. take off
 2. take up
 3. take out
 4. take after

Question ID : 65497836313
 Status : Not Answered
 Chosen Option : --

Section : Part D Hindi

Q.1 दिए गए शब्द के समानार्थी शब्द का चयन करें।

घोड़ा

- Ans 1. गय
 2. वारिज
 3. हय
 4. हरिवाहन

Question ID : 65497836325
 Status : Not Answered
 Chosen Option : --

Q.2 'खून सफेद हो जाना' मुहावरे का सही अर्थ क्या है?

- Ans 1. अत्याचार करना
 2. आश्चर्यचकित होना
 3. घृणा करना
 4. दया न रह जाना

Question ID : 65497836329

Status : Not Answered

Chosen Option : --

Q.3 रिक्त स्थान की पूर्ति करने के लिए सर्वाधिक उपयुक्त विकल्प का चयन करें।

मैंने _____ में सोचा कि ऐसा क्यों होता है।

- Ans 1. अन्तःकरण
 2. मन
 3. आत्मा
 4. चित्त

Question ID : 65497836332

Status : Not Answered

Chosen Option : --

Q.4 दिए गए वाक्य में रेखांकित खंड को प्रतिस्थापित करने के लिए सर्वाधिक उपयुक्त विकल्प का चयन करें। यदि इसे प्रतिस्थापित करने की आवश्यकता नहीं है, तो विकल्प 'किसी बदलाव की आवश्यकता नहीं है' का चयन करें।

उसकी आपबीती सुनकर मैं द्रविभूत हो गया।

- Ans 1. किसी बदलाव की आवश्यकता नहीं है।
 2. आपबीती सुनकर मैं द्रवीभूत हो गया।
 3. आपबिती सुनकर मैं द्रविभित हो गया।
 4. आपबीती सुनकर मैं द्रवीभूत हो गया।

Question ID : 65497836320

Status : Not Answered

Chosen Option : --

Q.5 दिए गए वाक्यांश के लिए एक सार्थक शब्द दीजिए।

जिसे तरने या पार जाने की इच्छा हो

- Ans 1. निरामिष
 2. मुमूर्षु
 3. तस्कर
 4. तितीर्षु

Question ID : 65497836317

Status : Not Answered

Chosen Option : --

Q.6 दिए गए शब्द के विलोम का चयन कीजिए।

न्यून

- Ans 1. बृहत
 2. अधिकतम
 3. अधिक
 4. अत्यत

Question ID : 65497836315
 Status : Not Answered
 Chosen Option : --

Q.7 दिए गए वाक्य का वह भाग ज्ञात करें जिसमें कोई त्रुटि है। यदि कोई त्रुटि नहीं है, तो 'कोई त्रुटि नहीं है' चुनें।

महापुरुषों के (1)/ उपदेशों को अपने (2)/ जीवन में प्रयोग करो (3)/ कोई त्रुटि नहीं है (4)

- Ans 1. 3
 2. 2
 3. 4
 4. 1

Question ID : 65497836324
 Status : Not Answered
 Chosen Option : --

Q.8 दिए गए वाक्य का वह भाग ज्ञात करें जिसमें कोई त्रुटि है। यदि कोई त्रुटि नहीं है, तो 'कोई त्रुटि नहीं है' चुनें।

कोयल की (1)/ कू कू सुनकर (2)/ मेरी नींद खुल गयी। (3)/ कोई त्रुटि नहीं है (4)

- Ans 1. 1
 2. 2
 3. 4
 4. 3

Question ID : 65497836322
 Status : Not Answered
 Chosen Option : --

Q.9 दिए गए वाक्य में रेखांकित अशुद्ध को प्रतिस्थापित करने के लिए सर्वाधिक उपयुक्त विकल्प का चयन करें।

स्कूल में व्याकरण की विद्या दी जाती है।

- Ans 1. बुद्धि
 2. दीक्षा
 3. ज्ञान
 4. शिक्षा

Question ID : 65497836333
 Status : Not Answered
 Chosen Option : --

Q.10 निम्नलिखित में से शुद्ध वर्तनी वाला शब्द कौन सा है?

- Ans 1. अनीष्ट
 2. अनिष्ट
 3. अनीष्ट
 4. अनिष्ट

Question ID : 65497836331
 Status : Not Answered
 Chosen Option : --

Q.11 रिक्त स्थान की पूर्ति करने के लिए सर्वाधिक उपयुक्त शब्द का चयन कीजिए।

भारत _____ देश है।

- Ans 1. धर्मनिरपेक्ष
 2. अपक्ष
 3. असहिष्णु
 4. सापेक्ष

Question ID : 65497836319
 Status : Not Answered
 Chosen Option : --

Q.12 'अनुरक्ति' का विलोम शब्द क्या होगा?

- Ans 1. आसक्ति
 2. भक्ति
 3. शक्ति
 4. विरक्ति

Question ID : 65497836328
 Status : Not Answered
 Chosen Option : --

Q.13 दिए गए शब्द के समानार्थी शब्द का चयन करें।

लक्ष्मी

- Ans 1. ब्राह्मी
 2. शैलसुता
 3. कालिका
 4. पद्मा

Question ID : 65497836323
 Status : Not Answered
 Chosen Option : --

Q.14 रिक्त स्थान की पूर्ति करने के लिए सर्वाधिक उपयुक्त शब्द का चयन कीजिए।

_____ अपनी-अपनी सेनाए लेकर आए।

- Ans 1. राजा
 2. अध्यापक
 3. नेता
 4. राजे

Question ID : 65497836318
 Status : Not Answered
 Chosen Option : --

Q.15 'जिसके हाथ में चक्र है' इस वाक्यांश के लिए एक सार्थक शब्द का चयन कीजिए।

- Ans
- 1. चंद्रशेखर
 - 2. चक्रधर
 - 3. चंद्रचूड़
 - 4. चक्रपाणि

Question ID : 65497836316

Status : Not Answered

Chosen Option : --

Q.16 दिए गए वाक्य में रेखांकित खंड को प्रतिस्थापित करने के लिए सर्वाधिक उपयुक्त विकल्प का चयन करें। यदि इसे प्रतिस्थापित करने की आवश्यकता नहीं है, तो विकल्प 'किसी बदलाव की आवश्यकता नहीं है' का चयन करें।

आजकल अफवाहों पर हरेक कोई विश्वास कर डालता है।

- Ans
- 1. हरेक विश्वास कर डालता है।
 - 2. हर कोई विश्वास कर डालता है।
 - 3. किसी बदलाव की आवश्यकता नहीं है।
 - 4. हर कोई विश्वास कर लेता है।

Question ID : 65497836321

Status : Not Answered

Chosen Option : --

Q.17 दिए गए वाक्यांश के लिए एक शब्द दीजिए।

जो ईश्वर में विश्वास रखता हो

- Ans
- 1. आस्तिक
 - 2. वास्तविक
 - 3. नास्तिक
 - 4. सात्विक

Question ID : 65497836326

Status : Not Answered

Chosen Option : --

Q.18 दिए गए वाक्य का वह भाग ज्ञात करें जिसमें कोई त्रुटि है। यदि कोई त्रुटि नहीं है, तो 'कोई त्रुटि नहीं है' चुनें।

वहाँ बहुत से पशु और पक्षी (1) उड़ते और चरते हुए (2) दिखाई दिए। (3) कोई त्रुटि नहीं है (4)

- Ans
- 1. 3
 - 2. 2
 - 3. 1
 - 4. 4

Question ID : 65497836314

Status : Not Answered

Chosen Option : --

Q.19 'आखें चार होना' मुहावरे का सही अर्थ क्या है?

- Ans 1. आमने-सामने होना
 2. घूरना
 3. लज्जित होना
 4. आकर्षित होना

Question ID : 65497836327

Status : Not Answered

Chosen Option : --

Q.20 निम्नलिखित में से शुद्ध वर्तनी वाला शब्द कौन सा है?

- Ans 1. नीरिह
 2. नीरीह
 3. निरीह
 4. निरिह

Question ID : 65497836330

Status : Not Answered

Chosen Option : --

Comprehension:

दिए गए गद्यांश में कुछ शब्द हटा दिए गए हैं। दिए गए विकल्पों की सहायता से रिक्त स्थानों की पूर्ति करें। प्रत्येक प्रश्न सख्या के लिए सर्वाधिक उपयुक्त विकल्प का चयन कीजिए।

जिज्ञासा मनुष्य की (1) _____ प्रवृत्ति है और आनन्द प्राप्ति उसकी स्वाभाविक (2) _____। घोर से घोर (3) _____ मनुष्य में भी ये दोनों प्रवृत्तियाँ स्वाभाविक और जन्म-जात हैं। उनका सतोषजनक (4) _____ न होने पर मनुष्य में एक ओर तो (5) _____ उत्पन्न होती है और दूसरी ओर भय, निराशा और अवसाद।

SubQuestion No : 21

Q.21 गद्यांश के रिक्त स्थान (1) के लिए सर्वाधिक उपयुक्त शब्द होगा-

- Ans 1. अनौपचारिक
 2. औपचारिक
 3. स्वाभाविक
 4. अस्वाभाविक

Question ID : 65497836335

Status : Not Answered

Chosen Option : --

Comprehension:

दिए गए गद्यांश में कुछ शब्द हटा दिए गए हैं। दिए गए विकल्पों की सहायता से रिक्त स्थानों की पूर्ति करें। प्रत्येक प्रश्न सख्या के लिए सर्वाधिक उपयुक्त विकल्प का चयन कीजिए।

जिज्ञासा मनुष्य की (1) _____ प्रवृत्ति है और आनन्द प्राप्ति उसकी स्वाभाविक (2) _____। घोर से घोर (3) _____ मनुष्य में भी ये दोनों प्रवृत्तियाँ स्वाभाविक और जन्म-जात हैं। उनका सतोषजनक (4) _____ न होने पर मनुष्य में एक ओर तो (5) _____ उत्पन्न होती है और दूसरी ओर भय, निराशा और अवसाद।

SubQuestion No : 22

Q.22 गद्यांश के रिक्त स्थान (2) के लिए सर्वाधिक उपयुक्त शब्द होगा-

- Ans 1. अर्वा
 2. कामना
 3. निर्वृ
 4. जिज्ञासा

Question ID : 65497836336

Status : Not Answered

Chosen Option : --

Comprehension:

दिए गए गद्यांश में कुछ शब्द हटा दिए गए हैं। दिए गए विकल्पों की सहायता से रिक्त स्थानों की पूर्ति करें। प्रत्येक प्रश्न सख्या के लिए सर्वाधिक उपयुक्त विकल्प का चयन कीजिए।

जिज्ञासा मनुष्य की (1) _____ प्रवृत्ति है और आनंद प्राप्ति उसकी स्वाभाविक (2) _____। घोर से घोर (3) _____ मनुष्य में भी ये दोनों प्रवृत्तियाँ स्वाभाविक और जन्म-जात हैं। उनका सतोषजनक (4) _____ न होने पर मनुष्य में एक ओर तो (5) _____ उत्पन्न होती है और दूसरी ओर भय, निराशा और अवसाद।

SubQuestion No : 23

Q.23 गद्यांश के रिक्त स्थान (3) के लिए सर्वाधिक उपयुक्त शब्द होगा-

- Ans
- 1. आर्थिक
 - 2. सामाजिक
 - 3. राजनीतिक
 - 4. भौतिकवादी

Question ID : 65497836337

Status : Not Answered

Chosen Option : --

Comprehension:

दिए गए गद्यांश में कुछ शब्द हटा दिए गए हैं। दिए गए विकल्पों की सहायता से रिक्त स्थानों की पूर्ति करें। प्रत्येक प्रश्न सख्या के लिए सर्वाधिक उपयुक्त विकल्प का चयन कीजिए।

जिज्ञासा मनुष्य की (1) _____ प्रवृत्ति है और आनंद प्राप्ति उसकी स्वाभाविक (2) _____। घोर से घोर (3) _____ मनुष्य में भी ये दोनों प्रवृत्तियाँ स्वाभाविक और जन्म-जात हैं। उनका सतोषजनक (4) _____ न होने पर मनुष्य में एक ओर तो (5) _____ उत्पन्न होती है और दूसरी ओर भय, निराशा और अवसाद।

SubQuestion No : 24

Q.24 गद्यांश के रिक्त स्थान (4) के लिए सर्वाधिक उपयुक्त शब्द होगा-

- Ans
- 1. गमन
 - 2. शमन
 - 3. निवारण
 - 4. उद्वेलन

Question ID : 65497836338

Status : Not Answered

Chosen Option : --

Comprehension:

दिए गए गद्यांश में कुछ शब्द हटा दिए गए हैं। दिए गए विकल्पों की सहायता से रिक्त स्थानों की पूर्ति करें। प्रत्येक प्रश्न सख्या के लिए सर्वाधिक उपयुक्त विकल्प का चयन कीजिए।

जिज्ञासा मनुष्य की (1) _____ प्रवृत्ति है और आनंद प्राप्ति उसकी स्वाभाविक (2) _____। घोर से घोर (3) _____ मनुष्य में भी ये दोनों प्रवृत्तियाँ स्वाभाविक और जन्म-जात हैं। उनका सतोषजनक (4) _____ न होने पर मनुष्य में एक ओर तो (5) _____ उत्पन्न होती है और दूसरी ओर भय, निराशा और अवसाद।

SubQuestion No : 25

Q.25 गद्यांश के रिक्त स्थान (5) के लिए सर्वाधिक उपयुक्त शब्द होगा-

- Ans
- 1. सुआवस्था
 - 2. दुरावस्था
 - 3. आस्था
 - 4. अनास्था

Question ID : 65497836339

Status : Not Answered

Chosen Option : --

Exam Date	26/11/2021
Exam Time :	9:00 AM - 10:30 AM
Subject	Constable GD 2021

Section : Part A General Intelligence and Reasoning

Q.1 Study the given pattern carefully and select the number that can replace the question mark (?) in it.

9 12 13
42 98 ?
39 46 80

- Ans 1. 93
 2. 99
 3. 140
 4. 89

Question ID : 65497834961
Status : Answered
Chosen Option : 4

Q.2 Select the number from among the given options that can replace the question mark (?) in the following series.

2, 4, 16, 256, ?

- Ans 1. 65336
 2. 65536
 3. 65000
 4. 65500

Question ID : 65497834945
Status : Answered
Chosen Option : 2

Q.3 Read the given statements and conclusions carefully. Assuming that the information given in the statements is true, even if it appears to be at variance with commonly known facts, decide which of the given conclusions logically follow(s) from the statements.

Statements:
Some kites are flights.
All flights are zeppelins.

Conclusions:
1. Some kites are zeppelins.
2. All zeppelins are flights.

- Ans 1. Both the conclusions follow
 2. None of the conclusions follow
 3. Only conclusion 1 follows
 4. Only conclusion 2 follows

Question ID : 65497834960
Status : Answered
Chosen Option : 3

Q.4 Select the option that is related to the third word in the same way as the second word is related to the first word.

Leaves : Chlorophyll :: Blood : ?

- Ans
- 1. White blood cells
 - 2. Platelets
 - 3. Plasma
 - 4. Haemoglobin

Question ID : 65497834965

Status : Answered

Chosen Option : 4

Q.5 Six friends, Perna, Priyanka, Rahul, Vishal, Tushar and Shruti, are sitting around a circular table, facing the centre of the table. Priyanka is sitting to the immediate left of Tushar. Vishal is sitting to the immediate left of Rahul. Perna is second to the right of Vishal. Perna is sitting between Rahul and Shruti. Who is sitting between Perna and Vishal?

- Ans
- 1. Priyanka
 - 2. Rahul
 - 3. Shruti
 - 4. Tushar

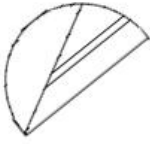
Question ID : 65497834966

Status : Answered

Chosen Option : 2

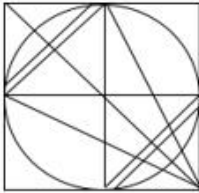
KD Job Updates

Q.6 Select the option in which the given figure is embedded (rotation is allowed).

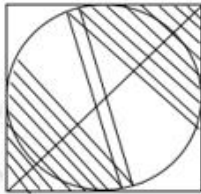


Ans

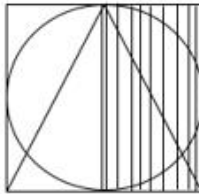
✗ 1.



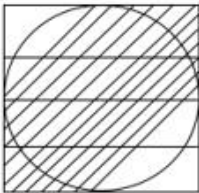
✗ 2.



✓ 3.



✗ 4.

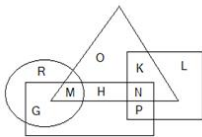


Question ID : 65497834954

Status : Answered

Chosen Option : 3

Q.7 In the following figure, the rectangle represents 'strong', the circle represents 'leather', the triangle represents 'bags', and the square represents 'red'.



Select the letter that represents leather bags which are strong but NOT red coloured.

Ans ✗ 1. G

✓ 2. M

✗ 3. K

✗ 4. N

Question ID : 65497834967

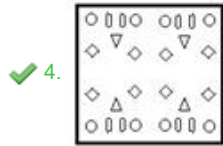
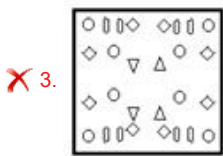
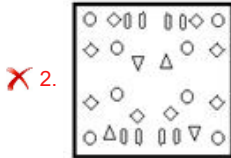
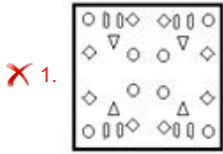
Status : Answered

Chosen Option : 2

Q.8 The sequence of folding a piece of paper and the manner in which the folded paper has been cut is shown in the following figures. How would this paper look when unfolded?



Ans



Question ID : 65497834963

Status : Answered

Chosen Option : 4

Q.9 निमेश, मेघना का एकलौता भाई है। सुरभि, निमेश की बेटी है। मेघना और नेहा बहनें हैं। मणि, करण का बेटा है, जो कि मेघना का पति है। मणि का सुरभि से क्या संबंध है?

Ans

- 1. पिता
- 2. मामा
- 3. चाचा
- 4. फुफेरा भाई

Question ID : 65497834949

Status : Answered

Chosen Option : 4

Q.10 Select the combination of letters that when sequentially placed in the blanks of the given series will complete the series.

s _ r _ k s _ _ c k _ u r c _ s u _ c _

Ans

- 1. c, u, c, r, s, k, r, k
- 2. u, c, u, r, s, k, r, k
- 3. c, u, c, s, r, k, s, k
- 4. u, c, u, k, r, s, r, k

Question ID : 65497834956

Status : Answered

Chosen Option : 2

Q.11 A soap costs ₹7 and a pen costs ₹5. Rajesh spent ₹38 and purchased both the things. What was the number of soaps he purchased?

- Ans
- 1. 2
 - 2. 5
 - 3. 4
 - 4. 3

Question ID : 65497834962
Status : Answered
Chosen Option : 3

Q.12 Select the option that is related to the third number in the same way as the second number is related to the first number.

132 : 501 :: 2364 : ?

- Ans
- 1. 5073
 - 2. 4582
 - 3. 9430
 - 4. 3474

Question ID : 65497834951
Status : Answered
Chosen Option : 1

Q.13 Select the letter-cluster from among the given options that can replace the question mark (?) in the following series.

HSI, OLO, VEU, CXA, ?

- Ans
- 1. KPG
 - 2. JPF
 - 3. KQF
 - 4. JQG

Question ID : 65497834964
Status : Answered
Chosen Option : 4

Q.14 In a certain code language, TRICKY is written as CXLFQH. How will PICNIC be written in that language?

- Ans
- 1. YOFOOL
 - 2. YOFQOL
 - 3. YOEOOL
 - 4. YOEQOL

Question ID : 65497834948
Status : Answered
Chosen Option : 2

Q.15 Select the figure from among the given options that can replace the question mark (?) in the following series.

$\Delta X =$	$X = \Delta$	$= \Delta X$?
--------------	--------------	--------------	---

Ans

1. $= X \Delta$

2. $\Delta = X$

3. $\Delta X =$

4. $X \Delta =$

Question ID : 65497834958

Status : Answered

Chosen Option : 3

Q.16 Select the number from among the given options that can replace the question mark (?) in the following series.

2, 3, 4, 5, 6, 7, 8, ?, 10, 13, 12, 17, 14

Ans 1. 9

2. 12

3. 10

4. 11

Question ID : 65497834957

Status : Answered

Chosen Option : 4

Q.17 Select the correct option that indicates the arrangement of the given words in a logical and meaningful order.

- i. Ammonification
- ii. Denitrification
- iii. Nitrogen fixation
- iv. Assimilation
- v. Nitrification

Ans 1. iii, v, iv, i, ii

2. v, iii, i, iv, ii

3. iii, v, i, iv, ii


4. v, iii, iv, i, ii

Question ID : 65497834955

Status : Not Answered

Chosen Option : --

Q.18 A box is made by folding the given sheet. In the box so formed, which face will be opposite to the face having ♥ ?



Ans



Question ID : 65497834953
 Status : Answered
 Chosen Option : 1

Q.19 Eight persons are sitting in a circle facing the centre. Arush is sitting opposite to Rita. There are two persons sitting between Rakesh and Arush. Ankita is sitting towards the right of Arush and opposite to Urvashi. Anu is sitting between Rita and Urvashi. Ankita is sitting between Rohan and Rakesh. Aman is sitting towards the left of Rohan. Who is sitting between Arush and Urvashi?

Ans



Question ID : 65497834950
 Status : Answered
 Chosen Option : 3

Q.20 If the signs '+' and '-' are interchanged and the digits '2' and '4' are interchanged, then what will be the value of the following expression?

$$426 \div 648 - 312$$

Ans



Question ID : 65497834952
 Status : Answered
 Chosen Option : 4

Q.21 Select the correct mirror image of the given combination when the mirror is placed at PQ as shown.

GR8ZEQ |
P Q

- Ans
- 1. G8ZREQ
 - 2. Q8ZREQ
 - 3. Q8ZREQ
 - 4. Q8ZREQ

Question ID : 65497834946
Status : Answered
Chosen Option : 4

Q.22 In a certain code language, TAPE is written as EPAT and LOVE is written as EVOL. How will NITIN be written in the same language?

- Ans
- 1. TINNI
 - 2. ITNNI
 - 3. INNTI
 - 4. NITIN

Question ID : 65497834944
Status : Answered
Chosen Option : 4

Q.23 Select the option that is related to the third letter-cluster in the same way as the second letter-cluster is related to the first letter-cluster.

CGRT : DJWA :: XUKM : ?

- Ans
- 1. YXQT
 - 2. YYPT
 - 3. YXPT
 - 4. YYQT

Question ID : 65497834947
Status : Answered
Chosen Option : 3

Q.24 In a certain code language, 'the light house' is written as 'zu chi pin', 'house is big' is written as 'mo tim zu', and 'the big garden' is written as 'riz tim pin'. How will 'light' be written in that language?

- Ans
- 1. chi
 - 2. mo
 - 3. riz
 - 4. big

Question ID : 65497834959
Status : Answered
Chosen Option : 1

Q.25 Five letters have been given, out of which four are alike in some manner and one is different. Select the letter that is different.

A, D, I, P, R

- Ans
- 1. P
 - 2. D
 - 3. I
 - 4. R

Question ID : 65497834943

Status : Answered

Chosen Option : 4

Section : Part B General Knowledge and General Awareness

Q.1 _____ बैंकिंग संचालन का एक विशेष खंड है जो व्यक्तियों या सगठनों को पूंजी जुटाने और उन्हें वित्तीय परामर्श सेवाएँ प्रदान करने में मदद करता है।

- Ans
- 1. वाणिज्यिक बैंकिंग (Commercial banking)
 - 2. निवेश बैंकिंग (Investment banking)
 - 3. निगमित वित्त (Corporate finance)
 - 4. निजी इक्विटी (Private equity)

Question ID : 65497834974

Status : Answered

Chosen Option : 1

Q.2 भारतीय संविधान में निम्नलिखित में से किस संवैधानिक संशोधन अधिनियम द्वारा राष्ट्रीय राजधानी क्षेत्र दिल्ली और केंद्र शासित प्रदेश पुदुचेरी की विधानसभाओं को राष्ट्रपति चुनाव के लिए निर्वाचक मंडल में जोड़ा गया था?

- Ans
- 1. संविधान (सत्तरवा संशोधन) अधिनियम, 1992
 - 2. संविधान (चौदहवा संशोधन) अधिनियम, 1962
 - 3. संविधान (सत्रहवा संशोधन) अधिनियम, 1964
 - 4. संविधान (छिहत्तरवा संशोधन) अधिनियम, 1994

Question ID : 65497834977

Status : Not Answered

Chosen Option : --

Q.3 Who among the following is the author of the book 'Night of the Restless Spirits: Stories from 1984'?

- Ans
- 1. Khushwant Singh
 - 2. Sarbpreet Singh
 - 3. Vinay Sitapati
 - 4. Chetan Bhagat

Question ID : 65497834972

Status : Answered

Chosen Option : 2

Q.4 Dendron and axon are parts of the:

- Ans 1. excretory system
 2. digestive system
 3. muscular system
 4. nervous system

Question ID : 65497834981
 Status : Not Answered
 Chosen Option : --

Q.5 In which of the following states is Murlen National Park located?

- Ans 1. Tripura
 2. Nagaland
 3. Mizoram
 4. Assam

Question ID : 65497834969
 Status : Answered
 Chosen Option : 4

Q.6 In which year was the first cotton mill at Bombay in India set up as a spinning mill?

- Ans 1. 1852
 2. 1853
 3. 1854
 4. 1851

Question ID : 65497834984
 Status : Answered
 Chosen Option : 2

Q.7 शिषिर कुमार घोष ने भारतीयों में राष्ट्रीयता की भावना जगाने के उद्देश्य से 1875 में _____ की स्थापना की थी।

- Ans 1. इंडियन एसोसिएशन
 2. आर्य समाज
 3. ईस्ट इंडिया एसोसिएशन
 4. इंडिया लीग

Question ID : 65497834975
 Status : Answered
 Chosen Option : 3

Q.8 निम्नलिखित में से कौन सी एक सघीय सरकार की विशेषता नहीं है?

- Ans 1. सविधान की सर्वोच्चता
 2. लिखित सविधान
 3. एकसदनी विधायिका
 4. दोहरी सरकार

Question ID : 65497834989
 Status : Answered
 Chosen Option : 4

Q.9 Which state does the India's woman cricketer Smriti Mandhana hail from?

- Ans 1. Maharashtra
 2. Gujarat
 3. Bihar
 4. Goa

Question ID : 65497834968
 Status : Answered
 Chosen Option : 4

Q.10 Sports Minister Kiren Rijju has launched which edition of the Fit India School Week in January 2021?

- Ans 1. 4th
 2. 2nd
 3. 6th
 4. 1st

Question ID : 65497834973
 Status : Not Answered
 Chosen Option : --

Q.11 निम्नलिखित में से किस आरंभिक भारतीय लेखक को बेपुर सुल्तान के नाम से जाना जाता है, जिन्होंने मलयालम भाषा में उपन्यास लिखे?

- Ans 1. एस्के पोट्टेक्कट
 2. पेरुबवदम श्रीधरन
 3. वैकोम मुहम्मद बशीर
 4. एमटी वासुदेवन नायर

Question ID : 65497834987
 Status : Not Answered
 Chosen Option : --

Q.12 TX2 लक्ष्य, 2022 तक दुनिया में जगली _____ की सख्या को दोगुना करने के लिए एक विश्वव्यापी प्रतिबद्धता है।

- Ans 1. हाथियो
 2. शेरो
 3. तेंदुओ
 4. बाघो

Question ID : 65497834985
 Status : Answered
 Chosen Option : 2

Q.13 पक्की सड़को के निर्माण के लिए किस पेट्रोलियम उत्पाद का उपयोग किया जाता है?

- Ans 1. अस्फाल्ट
 2. कोल गैस
 3. कोयला
 4. कोक

Question ID : 65497834983
 Status : Answered
 Chosen Option : 4

Q.14 In economics, what is the full form of GNP?

- Ans
- 1. Gross Natural Produce
 - 2. Gross National Product
 - 3. Great National Produce
 - 4. Gross Natural Product

Question ID : 65497834986
Status : Answered
Chosen Option : 2

Q.15 In which of the following states is Sirohi /Shirui National Park located?

- Ans
- 1. West Bengal
 - 2. Assam
 - 3. Manipur
 - 4. Odisha

Question ID : 65497834971
Status : Answered
Chosen Option : 1

Q.16 Charminar, a popular monument and mosque, is located in:

- Ans
- 1. Delhi
 - 2. Hyderabad
 - 3. Chennai
 - 4. Mumbai

Question ID : 65497834979
Status : Answered
Chosen Option : 2

Q.17 भारत में प्रथम 'गौ कैबिनेट (cow cabinet)' की स्थापना निम्नलिखित में से किस राज्य में की गई है?

- Ans
- 1. राजस्थान
 - 2. उत्तर प्रदेश
 - 3. मध्य प्रदेश
 - 4. बिहार

Question ID : 65497834978
Status : Not Answered
Chosen Option : --

Q.18 In which of the following states is the 'International Cherry Blossom Festival' celebrated annually?

- Ans
- 1. Punjab
 - 2. Himachal Pradesh
 - 3. Meghalaya
 - 4. Uttarakhand

Question ID : 65497834970
Status : Answered
Chosen Option : 3

Q.19 _____ नदी, पीर पजाल पर्वतमाला के समानांतर उत्तर-पश्चिम दिशा में बहती है और किश्तवाड़ के पास की पर्वतमाला को काटती है।

- Ans 1. सतलुज
 2. चेनाब
 3. ब्यास
 4. रावी

Question ID : 65497834991
 Status : Answered
 Chosen Option : 2

Q.20 _____ स्टेडियम की एक दीवार क्रिकेटर राहुल द्रविड़ को समर्पित है।

- Ans 1. चिन्नास्वामी
 2. अरुण जेटली
 3. जवाहर लाल नेहरू
 4. वानखेड़े

Question ID : 65497834992
 Status : Answered
 Chosen Option : 1

Q.21 2020 में 'लोकल फॉर दीवाली' अभियान निम्नलिखित में से किस मंत्रालय द्वारा आरंभ किया गया?

- Ans 1. रसायन और उर्वरक मंत्रालय
 2. वस्त्र मंत्रालय
 3. कोयला मंत्रालय
 4. आयुष मंत्रालय

Question ID : 65497834990
 Status : Answered
 Chosen Option : 2

Q.22 खाज (एग्जिमा) रोग का सबध मानव शरीर के निम्न में से किस भाग से है?

- Ans 1. अस्थि
 2. आँख
 3. त्वचा
 4. फेफड़े

Question ID : 65497834980
 Status : Answered
 Chosen Option : 3

Q.23 भारतीय बैंक आजकल अपनी जमा राशि का _____ प्रतिशत नकदी के रूप में रखते हैं, यह नकदी उन जमाकर्ताओं को भुगतान करने के लिए रखी जाती है जो किसी भी दिन बैंक से पैसे निकालने आ सकते हैं।

- Ans 1. 5
 2. 15
 3. 20
 4. 10

Question ID : 65497834988
 Status : Answered
 Chosen Option : 3

Q.24 Who is the author of the book 'The Rule Breakers'?

- Ans 1. Satyarth Nayak
 2. Preeti Shenoy
 3. Bibek Debroy
 4. Amitav Ghosh

Question ID : 65497834982
 Status : Not Answered
 Chosen Option : --

Q.25 Which of the following events was led by Sardar Vallabhbhai Patel?

- Ans 1. Dandi March
 2. Bardoli Satyagraha
 3. Chittagong Armoury Raid
 4. Kakori Conspiracy

Question ID : 65497834976
 Status : Answered
 Chosen Option : 2

Section : Part C Elementary Mathematics

Q.1 A man walks 600 m in 5 minutes. His speed (in km/h) is:

- Ans 1. 5.6 km/h
 2. 7.2 km/h
 3. 3.8 km/h
 4. 4.6 km/h

Question ID : 65497835006
 Status : Answered
 Chosen Option : 2

Q.2 The radii of the bases of a cylinder and a cone are in the ratio of 4 : 3 and their heights are in the ratio of 1 : 2. Find the ratio of their volumes.

- Ans 1. 3 : 8
 2. 4 : 5
 3. 8 : 3
 4. 5 : 4

Question ID : 65497835011
 Status : Answered
 Chosen Option : 3

Q.3 In an election between two candidates, 82% of voters cast their votes, out of which 4% were found to be invalid. The winning candidate got 108240 votes which are 55% of the valid votes. What was the total number of voters who cast their votes in this election?

- Ans 1. 250000
 2. 205000
 3. 200500
 4. 200000

Question ID : 65497835008
 Status : Answered
 Chosen Option : 2

Q.4 If T denotes the sum of money, M denotes the number of years, P denotes the rate of interest (interest is compounded annually), then the compound interest is given by:

- Ans**
- ✓ 1. $T(1 + P/100)^M - T$
 - ✗ 2. $T(1 + P/100)^M$
 - ✗ 3. $M(1 + T/100)^P - T$
 - ✗ 4. $M(1 + M/100)^P$

Question ID : **65497835004**
 Status : **Answered**
 Chosen Option : **2**

Q.5 A car runs 40 minutes at a speed of 45 km/h, next 45 minutes at a speed of 60 km/h and $1\frac{1}{2}$ hours at a speed of 50 km/h. The average speed (in km/h) of the car for the whole journey is closest to:

- Ans**
- ✗ 1. 52.8
 - ✗ 2. 52.3
 - ✗ 3. 51.9
 - ✓ 4. 51.4

Question ID : **65497835016**
 Status : **Answered**
 Chosen Option : **4**

Q.6 The list price of an article is ₹576. It is sold by allowing 20% discount on the list price. If its cost price is ₹480, then what will be the profit/loss percentage?

- Ans**
- ✗ 1. Loss, 2%
 - ✗ 2. Profit, 4%
 - ✗ 3. Profit, 2%
 - ✓ 4. Loss, 4%

Question ID : **65497835013**
 Status : **Answered**
 Chosen Option : **4**

Q.7 The value of $[17 + (8 - 5) \times 5] + (25 - 48 \div 6 + 12 \times 2)$ is:

- Ans**
- ✓ 1. 73
 - ✗ 2. 37
 - ✗ 3. 27
 - ✗ 4. 122

Question ID : **65497834998**
 Status : **Answered**
 Chosen Option : **1**

Q.8 What is the smallest number which when added to 5 is exactly divisible by 15, 20 and 21?

- Ans
- 1. 420
 - 2. 415
 - 3. 425
 - 4. 210

Question ID : 65497835007

Status : Answered

Chosen Option : 2

Q.9 एक ऋण दो समान वार्षिक किश्तों में लौटाया जाना है। यदि ब्याज की दर 10% वार्षिक है, जिसकी गणना वार्षिक चक्रवृद्धि आधार पर की जाती है और प्रत्येक किश्त ₹3,872 की है, तो ऋण की राशि (₹ में) कितनी है?

- Ans
- 1. 7,500
 - 2. 6,500
 - 3. 6,720
 - 4. 7,744

Question ID : 65497834996

Status : Answered

Chosen Option : 3

Q.10 एक वस्तु को 18% की हानि पर बेचा गया। यदि उस वस्तु को ₹2,475 अधिक में बेचा जाता, तो 12% का लाभ प्राप्त होता। वस्तु का विक्रय मूल्य (₹ में) ज्ञात कीजिए।

- Ans
- 1. 6,765
 - 2. 7,275
 - 3. 8,250
 - 4. 8,000

Question ID : 65497834995

Status : Answered

Chosen Option : 1

Q.11 If $2x + 7y : 4x - 3y :: 8 : 3$, then $x : y$ is:

- Ans
- 1. 45 : 38
 - 2. 22 : 37
 - 3. 45 : 26
 - 4. 24 : 43

Question ID : 65497835003

Status : Answered

Chosen Option : 3

Q.12 The radii of two circles are 21 cm and 25 cm, respectively. What is the area (in cm^2) of the circle whose circumference is equal to difference of the circumference of the two given circles? (Use $\pi = \frac{22}{7}$) correct to one decimal place.

- Ans**
- 1. 49.7
 - 2. 48.9
 - 3. 50.3
 - 4. 52.3

Question ID : 65497834994
Status : Answered
Chosen Option : 3

Q.13 The smallest number to which when 18 is added, the number is exactly divisible by 28, 36 and 45, is:

- Ans**
- 1. 1242
 - 2. 280
 - 3. 1000
 - 4. 518

Question ID : 65497835001
Status : Answered
Chosen Option : 1

Q.14 An article is purchased for ₹425 and sold for ₹500. The gain percentage is closest to:

- Ans**
- 1. 18.6%
 - 2. 17.65%
 - 3. 16.56%
 - 4. 18%

Question ID : 65497834999
Status : Answered
Chosen Option : 2

Q.15 The average of 26 numbers is 54.5. The average of the first 15 numbers is 58.6 and that of the last 12 numbers is 52. If the 15th number is excluded, the average of the remaining numbers will be:

- Ans**
- 1. 57.28
 - 2. 49.24
 - 3. 53.24
 - 4. 50.56

Question ID : 65497835012
Status : Answered
Chosen Option : 3

Q.16 Find the compound interest on ₹8,500 in 2 years at 6% per annum, interest being compounded half-yearly.

- Ans**
- 1. ₹1,066.82
 - 2. ₹9,968.72
 - 3. ₹1,050.25
 - 4. ₹1,025.75

Question ID : 65497835010
Status : Answered
Chosen Option : 1

Q.17 A, B and C together can complete a work in 8 days. If A is 50% more efficient than B and B is 50% efficient than C, then B alone will complete the same work in:

- Ans**
- 1. 16 days
 - 2. 24 days
 - 3. 48 days
 - 4. 36 days

Question ID : 65497835015
Status : Answered
Chosen Option : 4

Q.18 A man sold $\frac{5}{6}$ of his articles at a gain of 15% and the remaining at cost price. Find the gain earned by him in the whole transaction.

- Ans**
- 1. $9\frac{3}{5}\%$
 - 2. $12\frac{1}{2}\%$
 - 3. $15\frac{2}{3}\%$
 - 4. 7%

Question ID : 65497835017
Status : Answered
Chosen Option : 2

Q.19 एक दुकानदार ₹1,800 तक की खरीद पर 15% की छूट और ₹1,800 से अधिक की खरीद पर 17.5% छूट की घोषणा करता है। अब्दुल ₹8 प्रति पेन की दर से 225 पेन और ₹30 प्रति दर्जन की दर से 4 दर्जन पेंसिलें खरीदता है। अब्दुल द्वारा भुगतान की गई राशि ज्ञात कीजिए।

- Ans**
- 1. ₹1,580
 - 2. ₹1,684
 - 3. ₹1,540
 - 4. ₹1,584

Question ID : 65497834997
Status : Answered
Chosen Option : 4

Q.20 The ratio of three numbers is 3 : 2 : 5 and the sum of their squares is 8550. Find the sum of the numbers.

- Ans**
- 1. 150
 - 2. 172
 - 3. 225
 - 4. 75

Question ID : 65497835009
Status : Answered
Chosen Option : 1

Q.21 $\left\{\frac{12}{9-6}\right\} + 8 - \left(\frac{16}{4}\right) - (3 - 5 - 4)$ is equal to:

- Ans
- 1. 24
 - 2. 14
 - 3. 42
 - 4. 35

Question ID : 65497835005
 Status : Answered
 Chosen Option : 2

Q.22 Ram, who is half as efficient as Krish, will take 12 days to complete a task if he works alone. If Ram and Krish work together, how long will they take to complete the task?

- Ans
- 1. 2 days
 - 2. 4 days
 - 3. 6 days
 - 4. 8 days

Question ID : 65497835000
 Status : Answered
 Chosen Option : 2

Q.23 In a school total student are only boys and girls. The ratio of boys and girls in a school is 5 : 8. Which of the following could be the total number of students in the school?

- Ans
- 1. 2100
 - 2. 1800
 - 3. 2700
 - 4. 1690

Question ID : 65497834993
 Status : Answered
 Chosen Option : 4

Q.24 The mean of the first 7 odd prime numbers (correct to two decimal places) is:

- Ans
- 1. 7.34
 - 2. 12.35
 - 3. 10.71
 - 4. 12.45

Question ID : 65497835002
 Status : Answered
 Chosen Option : 3

Q.25 A, B and C are three numbers. A is 40% less than B and B is 15% less than C. If C is 50% more than D, then A will be less than D by:

- Ans**
- 1. 23.5%
 - 2. 10.75%
 - 3. 18.5%
 - 4. 24.25%

Question ID : 65497835014
Status : Answered
Chosen Option : 1

Section : Part D English

Q.1 Select the most appropriate option to fill in the blank.

He recovered after a _____ illness.

- Ans**
- 1. prolonged
 - 2. stretched
 - 3. surprise
 - 4. projected

Question ID : 65497835026
Status : Answered
Chosen Option : 1

Q.2 Select the most appropriate option that can substitute the underlined segment in the given sentence. If there is no need to substitute it, select 'No substitution required'.

"The players needing a break and we think it's time for them to rest," the coach told the reporters.

- Ans**
- 1. need a break
 - 2. No substitution required
 - 3. needs a break
 - 4. are need a break

Question ID : 65497835019
Status : Answered
Chosen Option : 1

Q.3 Select the most appropriate option to fill in the blank.

The book gives a _____ account of the horrors of war.

- Ans**
- 1. graphic
 - 2. bu ky
 - 3. heroic
 - 4. pleasant

Question ID : 65497835036
Status : Answered
Chosen Option : 1

Q.4 Select the correctly spelt word.

- Ans 1. Restaraunt
 2. Millienum
 3. Maintenance
 4. Refree

Question ID : 65497835030
 Status : Answered
 Chosen Option : 3

Q.5 The following sentence has been split into four segments. Identify the segment that contains a grammatical error.

Laughing for about ten minutes / continuous each day / is supposed to be / good for your health.

- Ans 1. good for your health
 2. Laughing for about ten minutes
 3. is supposed to be
 4. continuous each day

Question ID : 65497835020
 Status : Answered
 Chosen Option : 2

Q.6 Select the option that can be used as a one-word substitute for the given group of words.

The art of effective speaking

- Ans 1. Extempore
 2. Allocation
 3. Impromptu
 4. Elocution

Question ID : 65497835029
 Status : Answered
 Chosen Option : 4

Q.7 Select the most appropriate meaning of the given idiom.

Feel at sea

- Ans 1. To feel lost or confused
 2. To experience sea for the first time
 3. To feel exhausted
 4. To travel always by sea

Question ID : 65497835031
 Status : Answered
 Chosen Option : 1

Q.8 Select the option that will improve the underlined part of the given sentence. In case no improvement is needed, select 'No improvement required'.

She just completed the work before her friend came.

- Ans
- 1. has just completed the work
 - 2. just has completed the work
 - 3. had just completed the work
 - 4. No improvement required

Question ID : 65497835024
Status : Answered
Chosen Option : 1

Q.9 Select the most appropriate option to fill in the blank.

Edit and proofread your essay _____ times.

- Ans
- 1. less
 - 2. much
 - 3. few
 - 4. several

Question ID : 65497835018
Status : Answered
Chosen Option : 4

Q.10 Select the most appropriate ANTONYM of the given word.

Distinctive

- Ans
- 1. Similarity
 - 2. Common
 - 3. Original
 - 4. Close

Question ID : 65497835035
Status : Answered
Chosen Option : 1

Q.11 Select the correctly spelt word.

- Ans
- 1. Penninsula
 - 2. Pharmacy
 - 3. Domicille
 - 4. Canibal

Question ID : 65497835025
Status : Answered
Chosen Option : 2

Q.12 Select the most appropriate synonym of the given word.

Facility

- Ans 1. Happiness
 2. Fitting
 3. Skill
 4. Luck

Question ID : 65497835021
Status : Answered
Chosen Option : 1

Q.13 Select the option that will improve the underlined part of the given sentence. In case no improvement is needed, select 'No improvement required'.

The strong wind almost lifted me off my feet.

- Ans 1. above my feet
 2. over my feet
 3. against my feet
 4. No improvement required

Question ID : 65497835037
Status : Answered
Chosen Option : 3

Q.14 Select the option that can be used as a one-word substitute for the given group of words.

Not to pay attention to someone or something

- Ans 1. Ignore
 2. Attract
 3. Rebel
 4. Argue

Question ID : 65497835023
Status : Answered
Chosen Option : 1

Q.15 Select the most appropriate ANTONYM of the given word.

Guilty

- Ans 1. Sad
 2. Ignorant
 3. Innocent
 4. Clever

Question ID : 65497835028
Status : Answered
Chosen Option : 3

Q.16 Select the most appropriate synonym of the given word.

Kinship

- Ans 1. Viewership
 2. Partnership
 3. Relationship
 4. Incompatibility

Question ID : 65497835033
 Status : Answered
 Chosen Option : 2

Q.17 Select the most appropriate meaning of the given idiom.

In the same boat

- Ans 1. Sharing a ride
 2. Having fun
 3. To be calm
 4. In a similar situation

Question ID : 65497835022
 Status : Answered
 Chosen Option : 4

Q.18 Select the option that can be used as a one-word substitute for the given group of words.

A change which is the result of an act or some cause

- Ans 1. Addition
 2. Affect
 3. Effect
 4. Product

Question ID : 65497835034
 Status : Answered
 Chosen Option : 3

Q.19 The following sentence has been split into four segments. Identify the segment that contains a grammatical error.

The road was blocked / so we had / to turn back and / find another one route.

- Ans 1. so we had
 2. to turn back and
 3. The road was blocked
 4. find another one route

Question ID : 65497835032
 Status : Answered
 Chosen Option : 4

Q.20 The following sentence has been split into four segments. Identify the segment that contains a grammatical error.

Has the situation / been favourable, / I would have / attended the marriage.

- Ans
- 1. been favourable
 - 2. I would have
 - 3. Has the situation
 - 4. attended the marriage

Question ID : 65497835027

Status : Answered

Chosen Option : 2

Comprehension:

In the following passage, some words have been deleted. Read the passage carefully and select the most appropriate option to fill in each blank.

It was a cold, wet January day on (1) _____ Tom went back to school. He carried in his pocket (2) _____ sugar-candies and a doll for little Laura. The (3) _____ was long and boring. Tom wanted to reach as quickly as (4) _____. He couldn't wait to see Laura with the (5) _____ smile on her face.

SubQuestion No : 21

Q.21 Select the most appropriate option to fill in blank number 1.

- Ans
- 1. when
 - 2. that
 - 3. which
 - 4. where

Question ID : 65497835039

Status : Answered

Chosen Option : 3

Comprehension:

In the following passage, some words have been deleted. Read the passage carefully and select the most appropriate option to fill in each blank.

It was a cold, wet January day on (1) _____ Tom went back to school. He carried in his pocket (2) _____ sugar-candies and a doll for little Laura. The (3) _____ was long and boring. Tom wanted to reach as quickly as (4) _____. He couldn't wait to see Laura with the (5) _____ smile on her face.

SubQuestion No : 22

Q.22 Select the most appropriate option to fill in blank number 2.

- Ans
- 1. none
 - 2. some
 - 3. much
 - 4. any

Question ID : 65497835040

Status : Answered

Chosen Option : 2

Comprehension:

In the following passage, some words have been deleted. Read the passage carefully and select the most appropriate option to fill in each blank.

It was a cold, wet January day on (1) _____. Tom went back to school. He carried in his pocket (2) _____ sugar-candies and a doll for little Laura. The (3) _____ was long and boring. Tom wanted to reach as quickly as (4) _____. He couldn't wait to see Laura with the (5) _____ smile on her face.

SubQuestion No : 23

Q.23 Select the most appropriate option to fill in blank number 3.

- Ans 1. adventure
 2. passage
 3. visit
 4. journey

Question ID : 65497835041

Status : Answered

Chosen Option : 2

Comprehension:

In the following passage, some words have been deleted. Read the passage carefully and select the most appropriate option to fill in each blank.

It was a cold, wet January day on (1) _____. Tom went back to school. He carried in his pocket (2) _____ sugar-candies and a doll for little Laura. The (3) _____ was long and boring. Tom wanted to reach as quickly as (4) _____. He couldn't wait to see Laura with the (5) _____ smile on her face.

SubQuestion No : 24

Q.24 Select the most appropriate option to fill in blank number 4.

- Ans 1. practical
 2. portable
 3. possible
 4. probable

Question ID : 65497835042

Status : Answered

Chosen Option : 3

Comprehension:

In the following passage, some words have been deleted. Read the passage carefully and select the most appropriate option to fill in each blank.

It was a cold, wet January day on (1) _____. Tom went back to school. He carried in his pocket (2) _____ sugar-candies and a doll for little Laura. The (3) _____ was long and boring. Tom wanted to reach as quickly as (4) _____. He couldn't wait to see Laura with the (5) _____ smile on her face.

SubQuestion No : 25

Q.25 Select the most appropriate option to fill in blank number 5.

- Ans 1. adorable
 2. reliable
 3. suitable
 4. capable

Question ID : 65497835043

Status : Answered

Chosen Option : 1

Q.1 दिए गए वाक्य का वह भाग ज्ञात करें जिसमें कोई त्रुटि है। यदि कोई त्रुटि नहीं है, तो 'कोई त्रुटि नहीं है' चुनें।

इस सम्बन्ध से (1) और अधिक कहने की (2) आवश्यकता नहीं है (3) कोई त्रुटि नहीं है (4)

- Ans
- 1. 4
 - 2. 3
 - 3. 2
 - 4. 1

Question ID : 65497835050

Status : Not Answered

Chosen Option : --

Q.2 दिए गए वाक्य का वह भाग ज्ञात करें जिसमें कोई त्रुटि है। यदि कोई त्रुटि नहीं है, तो 'कोई त्रुटि नहीं है' चुनें।

उसने बोला कि (1) वह खाना (2) नहीं खायेगे (3) कोई त्रुटि नहीं है (4)

- Ans
- 1. 4
 - 2. 1
 - 3. 3
 - 4. 2

Question ID : 65497835045

Status : Not Answered

Chosen Option : --

Q.3 रिक्त स्थान की पूर्ति के लिए सबसे उपयुक्त शब्द का चयन करें।

हमारे शिक्षक प्रश्न _____ हैं।

- Ans
- 1. पुछवाते
 - 2. कहते
 - 3. पूछते
 - 4. पुछते

Question ID : 65497835049

Status : Not Answered

Chosen Option : --

Q.4 दिए गये वाक्याश के लिए एक शब्द है-

जिसका मूल नहीं है-

- Ans
- 1. जड़मूल
 - 2. अमूल
 - 3. समूल
 - 4. निर्मूल

Question ID : 65497835047

Status : Not Answered

Chosen Option : --

Q.5 दिए गए वाक्य में रेखांकित खंड को प्रतिस्थापित करने के लिए सबसे उपयुक्त विकल्प का चयन करें। यदि इसे प्रतिस्थापित करने की आवश्यकता नहीं है, तो विकल्प 'किसी बदलाव की आवश्यकता नहीं है' का चयन करें।

युवती ने घबराकर पूछा।

- Ans
- 1. घबराकर पूछी
 - 2. घबराई हुई पूछी
 - 3. घबराई और पूछने लगी
 - 4. किसी बदलाव की आवश्यकता नहीं है।

Question ID : 65497835044

Status : Not Answered

Chosen Option : --

Q.6 दिए गए शब्द का विलोम चुनें।

क्षर

- Ans
- 1. विक्षर
 - 2. साक्षर
 - 3. निरक्षर
 - 4. अक्षर

Question ID : 65497835051

Status : Not Answered

Chosen Option : --

Q.7 उस विकल्प का चयन करें जो निम्न मुहावरे का सही अर्थ व्यक्त करता है।

सब्ज बाग दिखाना

- Ans
- 1. हरियाली दिखाना
 - 2. अच्छी-अच्छी बातें कहकर बहकाना
 - 3. दशा सुधारना
 - 4. अपन सपने सुनाना

Question ID : 65497835048

Status : Not Answered

Chosen Option : --

Q.8 निम्न में से कौन से युग्म में पर्यायवाची शब्द दिए गए हैं?

- Ans
- 1. जय - पराजय
 - 2. हाथी - गज
 - 3. आश्रय - गगनचुम्बी इमारत
 - 4. कुबेर - गड्ड

Question ID : 65497835062

Status : Not Answered

Chosen Option : --

Q.9 'सारे शरीर की हड्डियो का ढाचा' वाक्याश के लिए एक शब्द होगा-

- Ans 1. खोपड़ी
 2. ककाल
 3. जीवाश्म
 4. जजाल

Question ID : 65497835063
 Status : Not Answered
 Chosen Option : --

Q.10 दिए गए शब्द का विलोम चुनें।

उष्ण

- Ans 1. शीतोष्ण
 2. शीतल
 3. ग्रीष्म
 4. गर्म

Question ID : 65497835055
 Status : Not Answered
 Chosen Option : --

Q.11 दिये गये वाक्य में रेखांकित अश को प्रतिस्थापित करने के लिए सबसे उपयुक्त विकल्प का चयन करें।

दूध लीटर की नाप से बिकता है।

- Ans 1. जाँच
 2. कीमत
 3. माप
 4. तौल

Question ID : 65497835059
 Status : Not Answered
 Chosen Option : --

Q.12 उस विकल्प का चयन करें जो निम्न मुहावरे का सही अर्थ व्यक्त करता है।

विष उगलना

- Ans 1. क्रोध करना
 2. हानि पहचानना
 3. द्वेषपूर्ण बात करना
 4. बुराई का प्रचार करना

Question ID : 65497835056
 Status : Not Answered
 Chosen Option : --

Q.13 दिए गए शब्द का समानार्थी शब्द निम्न में से कौन सा नहीं है-

गरीब

- Ans
- 1. अकिचन
 - 2. दरिद्र
 - 3. भृत्य
 - 4. कगाल

Question ID : 65497835046
Status : Not Answered
Chosen Option : --

Q.14 सही वर्तनी वाले शब्द का चयन करें।

- Ans
- 1. विदुषी
 - 2. विदुषि
 - 3. वीदुषी
 - 4. विदूषी

Question ID : 65497835054
Status : Not Answered
Chosen Option : --

Q.15 अशुद्ध अश को पहचानिए-

हमें / रविवार को / पिताजी के साथ / बाहर जानी है

- Ans
- 1. हमें
 - 2. बाहर जानी है
 - 3. रविवार को
 - 4. पिताजी के साथ

Question ID : 65497835061
Status : Not Answered
Chosen Option : --

Q.16 रिक्त स्थान की पूर्ति के लिए सबसे उपयुक्त शब्द का चयन करें-

जलसे में _____ लोग थे कि कहीं भी खड़े होने की जगह न थी।

- Ans
- 1. इतने
 - 2. कम
 - 3. कुछ
 - 4. थोड़े

Question ID : 65497835058
Status : Not Answered
Chosen Option : --

Q.17 नीचे दिए वाक्य में रिक्त-स्थान की पूर्ति के लिए सबसे उपयुक्त शब्द का चयन करें।

हवा की _____ में भी सगीत है।

- Ans
- 1. कड़कड़ाहट
 - 2. झनझनाहट
 - 3. घरघराहट
 - 4. सरसराहट

Question ID : 65497835057
Status : Not Answered
Chosen Option : --

Q.18 सही वर्तनी वाले शब्द का चयन करें।

- Ans
- 1. अधयात्मिक
 - 2. आध्यात्मिक
 - 3. अध्यात्मिक
 - 4. अधिआत्मिक

Question ID : 65497835053
Status : Not Answered
Chosen Option : --

Q.19 दिये गये वाक्यांश के लिए एक शब्द दीजिये।

जो कम खर्च करने वाला हो

- Ans
- 1. अव्ययी
 - 2. अतिव्ययी
 - 3. मितव्ययी
 - 4. अल्पव्ययी

Question ID : 65497835052
Status : Not Answered
Chosen Option : --

Q.20 दुष्काल में भूख से मरने की अवस्था हो जाती है।

शब्द समूह के स्थान पर उचित शब्द लिखिए-

- Ans
- 1. निराशाजनक
 - 2. बहुत खाकर
 - 3. भूखमरी
 - 4. निरोगी

Question ID : 65497835060
Status : Not Answered
Chosen Option : --

Comprehension:

दिए गए गद्यांश में से कुछ शब्द हटा दिए गए हैं। संबंधित प्रश्नों में प्रत्येक सख्या के लिए सबसे उपयुक्त विकल्प का चयन करें।

मोह मन की उस (1) _____ का द्योतक है, जिसमें मनुष्य (2) _____ के कारण सत्य को (3) _____ में (4) _____ हो जाता है। मोह के कारण हमारी चेतना पर ममत्व का (5) _____ चढ़ जाता है।

SubQuestion No : 21

Q.21 गद्यांश के रिक्त स्थान (1) के लिए सर्वाधिक उपयुक्त शब्द होगा-

- Ans 1. दशा
 2. कामना
 3. परिस्थिति
 4. चाहत

Question ID : 65497835065
 Status : Not Answered
 Chosen Option : --

Comprehension:

दिए गए गद्यांश में से कुछ शब्द हटा दिए गए हैं। संबंधित प्रश्नों में प्रत्येक सख्या के लिए सबसे उपयुक्त विकल्प का चयन करें।

मोह मन की उस (1) _____ का द्योतक है, जिसमें मनुष्य (2) _____ के कारण सत्य को (3) _____ में (4) _____ हो जाता है। मोह के कारण हमारी चेतना पर ममत्व का (5) _____ चढ़ जाता है।

SubQuestion No : 22

Q.22 गद्यांश के रिक्त स्थान (2) के लिए सर्वाधिक उपयुक्त शब्द होगा-

- Ans 1. भ्रम
 2. कुठा
 3. विवशता
 4. शका

Question ID : 65497835066
 Status : Not Answered
 Chosen Option : --

Comprehension:

दिए गए गद्यांश में से कुछ शब्द हटा दिए गए हैं। संबंधित प्रश्नों में प्रत्येक सख्या के लिए सबसे उपयुक्त विकल्प का चयन करें।

मोह मन की उस (1) _____ का द्योतक है, जिसमें मनुष्य (2) _____ के कारण सत्य को (3) _____ में (4) _____ हो जाता है। मोह के कारण हमारी चेतना पर ममत्व का (5) _____ चढ़ जाता है।

SubQuestion No : 23

Q.23 गद्यांश के रिक्त स्थान (3) के लिए सर्वाधिक उपयुक्त शब्द होगा-

- Ans 1. जानने
 2. चुनने
 3. पहचानने
 4. पकड़ने

Question ID : 65497835067
 Status : Not Answered
 Chosen Option : --

Comprehension:

दिए गए गद्यांश में से कुछ शब्द हटा दिए गए हैं। संबंधित प्रश्नों में प्रत्येक सख्या के लिए सबसे उपयुक्त विकल्प का चयन करें।

मोह मन की उस (1) _____ का द्योतक है, जिसमें मनुष्य (2) _____ के कारण सत्य को (3) _____ में (4) _____ हो जाता है। मोह के कारण हमारी चेतना पर ममत्व का (5) _____ चढ़ जाता है।

SubQuestion No : 24

Q.24 गद्यांश के रिक्त स्थान (4) के लिए सर्वाधिक उपयुक्त शब्द होगा-

- Ans
- 1. निपुण
 - 2. असमर्थ
 - 3. मोहासक्त
 - 4. विवश

Question ID : 65497835068

Status : Not Answered

Chosen Option : --

Comprehension:

दिए गए गद्यांश में से कुछ शब्द हटा दिए गए हैं। संबंधित प्रश्नों में प्रत्येक सख्या के लिए सबसे उपयुक्त विकल्प का चयन करें।

मोह मन की उस (1) _____ का द्योतक है, जिसमें मनुष्य (2) _____ के कारण सत्य को (3) _____ में (4) _____ हो जाता है। मोह के कारण हमारी चेतना पर ममत्व का (5) _____ चढ़ जाता है।

SubQuestion No : 25

Q.25 गद्यांश के रिक्त स्थान (5) के लिए सर्वाधिक उपयुक्त शब्द होगा-

- Ans
- 1. मुखौटा
 - 2. आवरण
 - 3. चादर
 - 4. रग

Question ID : 65497835069

Status : Not Answered

Chosen Option : --

Exam Date	15/12/2021
Exam Time :	9:00 AM - 10:30 AM
Subject	Constable GD 2021

Section : Part A General Intelligence and Reasoning

Q.1 Study the given pattern carefully and select the number that can replace the question mark (?) in it.

14 12 15
11 17 16
180 234 ?

- Ans 1. 272
 2. 369
 3. 298
 4. 425

Question ID : 65497830770
Status : Answered
Chosen Option : 1

Q.2 In a certain code language, the word 'DISK' is written as 'LTJE'. How will 'SFWP' be written in that language?

- Ans 1. REVO
 2. TGXQ
 3. OVER
 4. QXGT

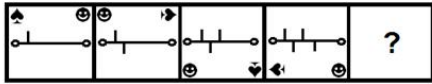
Question ID : 65497830768
Status : Answered
Chosen Option : 4

Q.3 'Monarch' is related to 'Butterfly' in the same way as 'Mamba' is related to '_____':

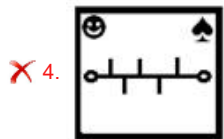
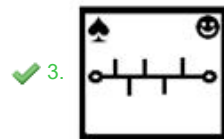
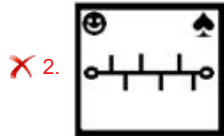
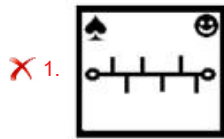
- Ans 1. Venom
 2. Snake
 3. Queen
 4. Royal

Question ID : 65497830765
Status : Answered
Chosen Option : 2

Q.4 Select the figure from among the given options that can replace the question mark (?) in the following series.



Ans



Question ID : 65497830776

Status : Answered

Chosen Option : 3

Q.5 Select the option that is related to the fourth number in the same way as the first number is related to the second number and the fifth number is related to the sixth number.

4523 : 22 :: ? : 14 :: 9178 : 13

Ans ✗ 1. 8228

✗ 2. 7448

✗ 3. 9152

✓ 4. 5440

Question ID : 65497830753

Status : Answered

Chosen Option : 2

Q.6 Select the correct option that indicates the arrangement of the given words in the order in which they appear in an English dictionary.

1. Congrats
2. Confusion
3. Confound
4. Congregate
5. Confucian

Ans ✗ 1. 3, 2, 5, 1, 4

✓ 2. 3, 5, 2, 1, 4

✗ 3. 3, 1, 4, 5, 2

✗ 4. 3, 4, 1, 5, 2

Question ID : 65497830773

Status : Answered

Chosen Option : 2

Q.7 A paper sheet is folded in a particular manner and several punches are made. When unfolded the paper sheet looks like the question figure. From the given options, select the figure that follows the manner in which the paper is folded and punched.

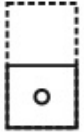


Ans

✓ 1.



✗ 2.



✗ 3.



✗ 4.



Question ID : 65497830772
 Status : Answered
 Chosen Option : 1

Q.8 Which two signs should be interchanged to make the given equation correct?

$$15 \times 6 + 132 - 11 \div 44 = 58$$

Ans ✗ 1. + and ×

✗ 2. + and ÷

✓ 3. ÷ and –

✗ 4. × and +

Question ID : 65497830754
 Status : Answered
 Chosen Option : 3

Q.9 Select the option that is related to the third letter-cluster in the same way as the second letter-cluster is related to the first letter-cluster.

PVSD : TYUE :: DPKR : ?

Ans ✗ 1. GTNS

✗ 2. HTMS

✓ 3. HSMS

✗ 4. ISNS

Question ID : 65497830757
 Status : Answered
 Chosen Option : 3

Q.10 Select the option in which the given figure is embedded (rotation is NOT allowed).



Ans

✗ 1.



✗ 2.



✓ 3.



✗ 4.



Question ID : 65497830756
 Status : Answered
 Chosen Option : 3

Q.11 Select the correct mirror image of the given figure when the mirror is placed at 'XY' as shown.



Ans

✗ 1.



✗ 2.



✓ 3.



✗ 4.



Question ID : 65497830763
 Status : Answered
 Chosen Option : 3

Q.12 Select the set of classes the relationship among which is best illustrated by the given Venn diagram.



- Ans
- 1. Citizen, Uneducated, Advocates
 - 2. Brothers, Cricketers, Men
 - 3. Sofa, Furniture, Book
 - 4. Sharks, Whales, Toads

Question ID : 65497830767
 Status : Answered
 Chosen Option : 1

Q.13 Five persons are sitting in a row. D and H are the two persons at the extreme end. L is to the right of P. T is to the left of the H. What is the position of L from the left?

- Ans
- 1. First
 - 2. Second
 - 3. Third
 - 4. Fourth

Question ID : 65497830766
 Status : Answered
 Chosen Option : 2

Q.14 Select the letter-cluster from among the given options that can replace the question mark (?) in the following series.

GLQ, VAF, KPU, ZEJ, ?

- Ans
- 1. OUZ
 - 2. OTY
 - 3. PTY
 - 4. PUY

Question ID : 65497830764
 Status : Answered
 Chosen Option : 2

Q.15 Select the number from among the given options that can replace the question mark (?) in the following series.

14, 14, 15, 23, 87, 212, ?

- Ans
- 1. 482
 - 2. 428
 - 3. 284
 - 4. 248

Question ID : 65497830775
 Status : Answered
 Chosen Option : 2

Q.16 Four letter-clusters have been given, out of which three are alike in some manner and one is different. Select the odd one.

- Ans
- 1. RNJF
 - 2. XTPL
 - 3. MIEA
 - 4. TPLI

Question ID : 65497830760
Status : Answered
Chosen Option : 4

Q.17 Select the number from among the given options that can replace the question mark (?) in the following series.

6, 5, 7, 7, 10, 11, 15, 17, ?

- Ans
- 1. 22
 - 2. 25
 - 3. 24
 - 4. 23

Question ID : 65497830762
Status : Answered
Chosen Option : 1

Q.18 Eight friends, A, B, C, D, E, F, G and H, are sitting clockwise around a circular table in the same sequence, facing the centre, at equal distance between them. C is facing the north direction. Now if D leaves his place and a new friend Y occupies D's place, then which of the following two persons are sitting opposite each other?

- Ans
- 1. Y and B
 - 2. C and H
 - 3. B and F
 - 4. F and A

Question ID : 65497830752
Status : Answered
Chosen Option : 3

Q.19 Pointing to Kiran, Rohan says, "She is the daughter of the only son of my grandfather." How is Kiran related to Rohan?

- Ans
- 1. Mother
 - 2. Daughter-in-law
 - 3. Wife
 - 4. Sister

Question ID : 65497830759
Status : Answered
Chosen Option : 4

Q.20 Select the combination of letters that when sequentially placed in the blanks of the given series will complete the series.

KP_LMK_TL_KPT_M_PT_M

- Ans 1. T, P, M, L, K, L
 2. P, K, L, T, M, L
 3. P, T, L, K, M, L
 4. T, P, L, M, L, K

Question ID : 65497830774

Status : Answered

Chosen Option : 1

Q.21 Read the given statements and conclusions carefully. Assuming that the information given in the statements is true, even if it appears to be at variance with commonly known facts, decide which of the given conclusions logically follow(s) from the statements.

Statements:

- I. All grills are ovens.
 II. Some tandoors are grills.

Conclusions:

- I. Some tandoors are oven.
 II. All ovens are tandoor.

- Ans 1. Only conclusion II follows.
 2. Only conclusion I follows.
 3. Both conclusions I and II follow.
 4. Neither conclusion I nor II follows.

Question ID : 65497830769

Status : Answered

Chosen Option : 4

Q.22 In a certain code language, MORALE is coded as 1315181125. How will VALUES be coded in that language?

- Ans 1. 2211221519
 2. 1951221122
 3. 2121212519
 4. 1125185131

Question ID : 65497830761

Status : Answered

Chosen Option : 1

Q.23 In a certain code language, 'HEROIC' is written as 'KBULLZ'. How will 'VALIANT' be written in that language?

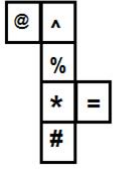
- Ans 1. YXOLXQQ
 2. YXOFDKW
 3. YXOEDLW
 4. TCJLYPS

Question ID : 65497830758

Status : Answered

Chosen Option : 2

Q.24 A cube is made by folding the given sheet. In the cube so formed, which pair of symbols will be on opposite faces?



- Ans
- 1. # and =
 - 2. @ and %
 - 3. @ and =
 - 4. % and *

Question ID : 65497830755
 Status : Answered
 Chosen Option : 3

Q.25 How many terms of the series 53, 57, 61, 65 Need to be taken so that their sum is 1106?

- Ans
- 1. 15
 - 2. 20
 - 3. 14
 - 4. 21

Question ID : 65497830771
 Status : Answered
 Chosen Option : 3

Section : Part B General Knowledge and General Awareness

Q.1 In which year was the Sahitya Akademi Award started?

- Ans
- 1. 1955
 - 2. 1954
 - 3. 1956
 - 4. 1953

Question ID : 65497830790
 Status : Answered
 Chosen Option : 3

Q.2 In which year was the English Education Act introduced to make English the medium of instruction for higher education and to stop the promotion of oriental institutions?

- Ans
- 1. 1835
 - 2. 1830
 - 3. 1854
 - 4. 1833

Question ID : 65497830785
 Status : Answered
 Chosen Option : 1

Q.3 Who among the following sportspersons received the prestigious Rajiv Gandhi Khel Ratna Award in August 2020?

- Ans
- 1. Atanu Das
 - 2. Mariyappan T
 - 3. Naresh Kumar
 - 4. Romesh Pathania

Question ID : 65497830801
Status : Answered
Chosen Option : 2

Q.4 Which of the following insects has a pigment called 'luciferin'?

- Ans
- 1. Butterfly
 - 2. Redfly
 - 3. Nightfly
 - 4. Firefly

Question ID : 65497830779
Status : Answered
Chosen Option : 3

Q.5 Who was appointed as the director of the Indian National Centre for Ocean Information System in 2020?

- Ans
- 1. Vinay Mohan Kwatra
 - 2. Srinivasa Kumar Tummala
 - 3. BV Satyanarayana
 - 4. S Nageswara Rao

Question ID : 65497830787
Status : Answered
Chosen Option : 4

Q.6 Which of the following is a water-borne disease?

- Ans
- 1. Cholera
 - 2. Common cold
 - 3. Mumps
 - 4. Pneumonia

Question ID : 65497830797
Status : Answered
Chosen Option : 1

Q.7 Which among the following became the first Indian Airport to launch an e-boarding facility for passengers on International flights?

- Ans
- 1. GMR Hyderabad International Airport
 - 2. Indira Gandhi International Airport, Delhi
 - 3. Sardar Vallabhbhai Patel International Airport, , Gujarat
 - 4. Dabolim Airport, Goa

Question ID : 65497830793
Status : Answered
Chosen Option : 2

Q.8 Which of the following terms is used to describe the outside layer of skin on the human body?

- Ans
- 1. Keratin
 - 2. Larynx
 - 3. Epidermis
 - 4. Quadriceps

Question ID : 65497830778
Status : Answered
Chosen Option : 3

Q.9 In Australian Open 2020 Tennis Tournament who won the Men's Singles title?

- Ans
- 1. Rafael Nadal
 - 2. Dominic Thiem
 - 3. Alexander Zverev
 - 4. Novak Djokovic

Question ID : 65497830783
Status : Answered
Chosen Option : 4

Q.10 Salal Hydroelectric Power Station is built on which of the following rivers?

- Ans
- 1. Chenab
 - 2. Bhagirathi
 - 3. Jhelum
 - 4. Kosi

Question ID : 65497830800
Status : Answered
Chosen Option : 3

Q.11 The Cabinet Committee on Economic Affairs (CCEA) announced the highest increase in (MSP) for _____ for the Rabi Marketing Season 2020-21.

- Ans
- 1. wheat
 - 2. mustard
 - 3. barley
 - 4. lentil

Question ID : 65497830794
Status : Answered
Chosen Option : 1

Q.12 The 'Pattachitra' style of painting is a popular art form associated with the state of:

- Ans
- 1. Bihar
 - 2. Rajasthan
 - 3. Odisha
 - 4. Uttar Pradesh

Question ID : 65497830777
Status : Answered
Chosen Option : 1

Q.13 Which of the following is a famous Tamil epic composed by Ilango in ancient India?

- Ans
- 1. Shishupala Vadha
 - 2. Silappadikaram
 - 3. Aitareya Brahmana
 - 4. Ramacharitam

Question ID : 65497830798
Status : Not Answered
Chosen Option : --

Q.14 In October 2020, investment promotion and facilitation agency Guidance partnered with World Economic Forum (WEF) to establish India's first advanced manufacturing hub (AMHUB) in the state of _____.

- Ans
- 1. Tamil Nadu
 - 2. Karnataka
 - 3. Kerala
 - 4. Andhra Pradesh

Question ID : 65497830799
Status : Answered
Chosen Option : 1

Q.15 SLR determines the amount of money a bank needs to invest in certain specified securities, which are predominantly securities issued by the central and state governments. What is the full form of SLR?

- Ans
- 1. Statutory Liquidity Reserve
 - 2. Statutory Liquidity Ratio
 - 3. Statement Liquidity Ratio
 - 4. Statutory Liquidity Rate

Question ID : 65497830781
Status : Answered
Chosen Option : 4

Q.16 Which Indian player won the BBC Indian Sportswoman of the Year 2019?

- Ans
- 1. Manasi Joshi
 - 2. PV Sindhu
 - 3. Mary Kom
 - 4. Vinesh Phogat

Question ID : 65497830791
Status : Answered
Chosen Option : 2

Q.17 According to the Constitution of India, which of the following statements is correct?

- Ans
- 1. The Legislature is a small group of people.
 - 2. The Executive refers to our elected representatives.
 - 3. The Legislature, Executive and the Judiciary should exercise same powers.
 - 4. The Judiciary refers to the system of courts in the country.

Question ID : 65497830792
Status : Answered
Chosen Option : 4

Q.18 The Nobel Peace Prize 2020 was awarded to:

- Ans 1. International Monetary Fund
 2. Amnesty International
 3. World Food Programme
 4. World Health Organization

Question ID : 65497830780
Status : Answered
Chosen Option : 3

Q.19 A 'charkha' was placed at the centre of the tricolour flag of the Indian National Congress adopted in the year _____.

- Ans 1. 1929
 2. 1931
 3. 1938
 4. 1926

Question ID : 65497830795
Status : Answered
Chosen Option : 3

Q.20 What was India's rank in the Emerging Green Bond Market as per Economic Survey 2019-20?

- Ans 1. First
 2. Fourth
 3. Second
 4. Third

Question ID : 65497830796
Status : Answered
Chosen Option : 4

Q.21 Dashain is a famous festival which originated from _____.

- Ans 1. Myanmar
 2. India
 3. Nepal
 4. Bhutan

Question ID : 65497830788
Status : Answered
Chosen Option : 3

Q.22 Which of the following is India's highest (tallest) dam?

- Ans 1. Sardar Sarovar Dam, Gujarat
 2. Hirakud Dam, Odisha
 3. Tehri Dam, Uttarakhand
 4. Bhakra Nangal Dam, Himachal Pradesh

Question ID : 65497830782
Status : Answered
Chosen Option : 3

Q.23 How many fundamental rights and fundamental duties are prescribed in the Constitution of India?

- Ans
- 1. Seven and eleven, respectively
 - 2. Seven and ten, respectively
 - 3. Six and eleven, respectively
 - 4. Eight and ten, respectively

Question ID : 65497830786
Status : Answered
Chosen Option : 3

Q.24 In 1977, the Government of Bengal erected its first statue dedicated to a female freedom fighter in Kolkata Maidan. What was her name?

- Ans
- 1. Aruna Asaf Ali
 - 2. Matangini Hazra
 - 3. Kanaklata Barua
 - 4. Bh ka ji Cama

Question ID : 65497830784
Status : Answered
Chosen Option : 2

Q.25 In which year did India sign an agreement with International Seabed Authority for exploratory mining?

- Ans
- 1. 2000
 - 2. 2002
 - 3. 2003
 - 4. 2001

Question ID : 65497830789
Status : Not Answered
Chosen Option : --

Section : Part C Elementary Mathematics

Q.1 4 years ago, the average age of a family of 4 members was 19 years. A baby having been born, the average age of the family is the same today. Find the present age of the baby.

- Ans
- 1. 4 years
 - 2. 2 years
 - 3. 1 year
 - 4. 3 years

Question ID : 65497830814
Status : Answered
Chosen Option : 3

Q.2 The average of 9 numbers is 51. Average of three of them is 49 and average of four of the remaining numbers is 46. What is the average of the remaining numbers?

- Ans**
- 1. 54
 - 2. 64
 - 3. 63
 - 4. 62.5

Question ID : 65497830803
Status : Answered
Chosen Option : 2

Q.3 The marked price of a bed sheet was ₹750. A man bought the bed sheet for ₹560 after getting two successive discounts of which the first was 16%. How much was the second discount?

- Ans**
- 1. $11\frac{1}{2}\%$
 - 2. $11\frac{1}{9}\%$
 - 3. $11\frac{1}{4}\%$
 - 4. $11\frac{4}{3}\%$

Question ID : 65497830815
Status : Answered
Chosen Option : 2

Q.4 Find the value of $3 + \left\{ 1 + \frac{1}{3} - (3 - 4 \div 3) + \frac{1}{4} + \frac{2}{3} \right\}$.

- Ans**
- 1. $\frac{7}{3}$
 - 2. $\frac{11}{12}$
 - 3. $\frac{43}{12}$
 - 4. $\frac{4}{3}$

Question ID : 65497830824
Status : Answered
Chosen Option : 3

Q.5 Kelvin and Kim can together finish a work in 25 days. They worked together for 15 days and then Kim left. After that, Kelvin finished the remaining work in 12 days. In how many days, can Kelvin alone finish the work?

- Ans**
- 1. 39
 - 2. 34
 - 3. 36
 - 4. 30

Question ID : 65497830817
Status : Answered
Chosen Option : 4

Q.6 The price of an article increases by 10% every year. If the difference between its price at the end of the first year and third year is ₹69.30, then its price (in ₹) at the end of fourth year will be:

- Ans**
- 1. 363.00
 - 2. 441.93
 - 3. 399.30
 - 4. 439.23

Question ID : 65497830820
Status : Answered
Chosen Option : 4

Q.7 A tradesman marks his goods 20% above the cost price and allows his customers 10% reduction on their bills. What percentage profit does he make?

- Ans**
- 1. 7%
 - 2. 9%
 - 3. 5%
 - 4. 8%

Question ID : 65497830808
Status : Answered
Chosen Option : 4

Q.8 A vendor bought 25 dozen fruits for ₹3,750. Out of these, 50 fruits were rotten and therefore thrown away. At what rate per dozen (in ₹) should he sell the remaining to gain 20% in the entire transaction?

- Ans**
- 1. 216
 - 2. 180
 - 3. 192
 - 4. 204

Question ID : 65497830826
Status : Answered
Chosen Option : 1

Q.9 The HCF of 552, 759 and 828 is x . The value of x lies between:

- Ans**
- 1. 65 and 70
 - 2. 60 and 65
 - 3. 55 and 60
 - 4. 70 and 75

Question ID : 65497830819
Status : Answered
Chosen Option : 1

Q.10 The average attendance at a cricket stadium increased by 15% in 2012 in comparison to the previous year. If 2160 more people came to see the matches in 2012, how many came in 2011?

- Ans
- 1. 24000
 - 2. 14400
 - 3. 15000
 - 4. 32400

Question ID : 65497830816
Status : Answered
Chosen Option : 2

Q.11 A sum of ₹7,560 is divided between A, B and C such that if their shares are diminished by ₹400, ₹300 and ₹260, respectively, then their shares are in the ratio 4 : 2 : 5. What is the original share (in ₹) of C?

- Ans
- 1. 2,800
 - 2. 1,500
 - 3. 3,260
 - 4. 6,600

Question ID : 65497830806
Status : Answered
Chosen Option : 3

Q.12 The ratio of the present ages of A and B is 8 : 15. After four years from now, their ages will be in the ratio 9 : 16. What will be the sum of their ages (in years) after 8 years from now?

- Ans
- 1. 116
 - 2. 108
 - 3. 100
 - 4. 98

Question ID : 65497830821
Status : Answered
Chosen Option : 2

Q.13 A shopkeeper marks his goods at 20% above the cost price and gives two successive discounts of 5% and 10%. The gain percentage is:

- Ans
- 1. 2.3%
 - 2. 3%
 - 3. 1.8%
 - 4. 2.6%

Question ID : 65497830813
Status : Answered
Chosen Option : 4

Q.14 The area of a rectangular garden is 432 m^2 . The perimeter (in m) of the rectangular garden whose length is 6 m more than its width is:

- Ans**
- 1. 84
 - 2. 108
 - 3. 42
 - 4. 96

Question ID : 65497830807
 Status : Answered
 Chosen Option : 1

Q.15 If A bought an item for ₹384 and sold for ₹527, and B bought another item for ₹1,264 and sold for ₹1,724, whose gain percentage is more and by how much approximately?

- Ans**
- 1. A by 1.63%
 - 2. B by 1.54%
 - 3. A by 0.84%
 - 4. B by 0.65%

Question ID : 65497830811
 Status : Answered
 Chosen Option : 4

Q.16 Sheena owned 4 plants on which fresh flowers come every 2nd, 3rd, 4th and 6th day, respectively. If on Tuesday, fresh flowers came on all the four plants, then on which day will fresh flowers come on all the four plants at the earliest?

- Ans**
- 1. Tuesday
 - 2. Sunday
 - 3. Monday
 - 4. Thursday

Question ID : 65497830802
 Status : Answered
 Chosen Option : 2

Q.17 A can complete a task in 15 days and B can do it in 20 days. What is their one day work together?

- Ans**
- 1. $\frac{8}{15}$
 - 2. $\frac{7}{15}$
 - 3. $\frac{7}{60}$
 - 4. $\frac{9}{65}$

Question ID : 65497830812
 Status : Answered
 Chosen Option : 3

Q.18 अनिल ने Y शहर से X शहर के लिए 4.20 a.m. बजे प्रस्थान किया। उसने पहले 1 h 30 min तक 70 km/h की गति से यात्रा की। उसके बाद, गति को घटाकर 50 km/h कर दिया। यदि दोनों शहरों के बीच की दूरी 240 km थी, तो अनिल कितने बजे X शहर पहुंचा?

- Ans**
- 1. 7.25 a.m.
 - 2. 10.24 a.m.
 - 3. 8.32 a.m.
 - 4. 9.45 a.m.

Question ID : 65497830818
Status : Answered
Chosen Option : 3

Q.19 The diameter of the base of a right circular cone is 60 cm and its height is 16 cm. The curved surface area (in cm^2) of the cone is:

- Ans**
- 1. 960π
 - 2. 1020π
 - 3. 1054π
 - 4. 1088π

Question ID : 65497830823
Status : Answered
Chosen Option : 2

Q.20 $3 \times 6 + 8 - 6 \div 3 + 9$ is equal to:

- Ans**
- 1. 12
 - 2. 45
 - 3. 21
 - 4. 33

Question ID : 65497830810
Status : Answered
Chosen Option : 4

Q.21 A man travels from A to B at a speed of 20 km/h and returns by increasing his speed by 50%. What is his average speed for both the trips?

- Ans**
- 1. 40 km/h
 - 2. 48 km/h
 - 3. 24 km/h
 - 4. 36 km/h

Question ID : 65497830825
Status : Answered
Chosen Option : 3

Q.22 ₹16,000 धनराशि को 2 वर्ष के लिए 20% वार्षिक चक्रवृद्धि ब्याज दर पर उधार दिया जाता है। ब्याज यदि वार्षिक रूप में चक्रवृद्धि होने के बजाये अर्धवार्षिक रूप से चक्रवृद्धि होता, तो ब्याज के रूप में ₹x अधिक प्राप्त होते। x का मान कितना है?

- Ans
- 1. ₹378.20
 - 2. ₹365.40
 - 3. ₹372.80
 - 4. ₹385.60

Question ID : 65497830822
Status : Answered
Chosen Option : 4

Q.23 The monthly salaries of A, B and C are in the ratio 7 : 8 : 11. If the monthly salary of B is ₹3,600 less than that of C, then what is the annual salary (in ₹) of A?

- Ans
- 1. 8,40,000
 - 2. 1,00,800
 - 3. 6,30,000
 - 4. 3,15,000

Question ID : 65497830804
Status : Answered
Chosen Option : 1

Q.24 The simple interest on a certain sum of money for 2 years at 12% per annum is ₹60 less than the simple interest on the same sum for 3 years at 10% per annum. The sum (in ₹) is:

- Ans
- 1. ₹1,400
 - 2. ₹900
 - 3. ₹1,200
 - 4. ₹1,000

Question ID : 65497830809
Status : Answered
Chosen Option : 4

Q.25 If the compound interest on a certain sum for two years at 10% per annum compounded annually is ₹3,360, then what is the sum?

- Ans
- 1. ₹16,500
 - 2. ₹16,000
 - 3. ₹15,000
 - 4. ₹15,500

Question ID : 65497830805
Status : Answered
Chosen Option : 2

Q.1 Select the most appropriate meaning of the given idiom.

Maiden speech

- Ans 1. Unprepared speech
 2. First speech
 3. Last speech
 4. Madam's speech

Question ID : 65497830835
 Status : Answered
 Chosen Option : 2

Q.2 Select the most appropriate ANTONYM of the given word.

Dispute

- Ans 1. Trouble
 2. Confusion
 3. Doubt
 4. Agreement

Question ID : 65497830836
 Status : Answered
 Chosen Option : 4

Q.3 The following sentence has been divided into parts. One of them may contain an error. Select the part that contains the error from the given options. If you don't find any error, mark 'No error' as your answer.

By this time tomorrow / we will have / reached to Delhi.

- Ans 1. we will have
 2. No error
 3. By this time tomorrow
 4. reached to Delhi

Question ID : 65497830841
 Status : Answered
 Chosen Option : 1

Q.4 Select the most appropriate meaning of the given idiom.

A dime a dozen

- Ans 1. Something which can be bought only in dozens
 2. Something which is not expensive
 3. Something very common or of little value
 4. Something which costs a dime

Question ID : 65497830839
 Status : Answered
 Chosen Option : 3

Q.5 Select the most appropriate option to fill in the blank.

The situation became _____ after the scuffle between the farmers and the police.

- Ans
- 1. sad
 - 2. serious
 - 3. funny
 - 4. smooth

Question ID : 65497830829
Status : Answered
Chosen Option : 4

Q.6 Select the most appropriate ANTONYM of the given word.

INVERT

- Ans
- 1. Straighten
 - 2. Reverse
 - 3. Upset
 - 4. Lean

Question ID : 65497830842
Status : Answered
Chosen Option : 1

Q.7 Select the most appropriate option that can substitute the underlined segment in the given sentence. If there is no need to substitute it, select 'No substitution required'.

The farmer walked beside his bulls, isn't it?

- Ans
- 1. didn't he
 - 2. did he
 - 3. No substitution required
 - 4. didn't they

Question ID : 65497830827
Status : Answered
Chosen Option : 1

Q.8 Select the most appropriate synonym of the given word.

Recover

- Ans
- 1. Remain
 - 2. Regain
 - 3. Refrain
 - 4. Retain

Question ID : 65497830833
Status : Answered
Chosen Option : 2

Q.9 Select the most appropriate option to fill in the blank.

Mother's back was too _____ to work any longer, so she lay down to rest.

- Ans
- 1. sick
 - 2. sour
 - 3. sore
 - 4. soft

Question ID : 65497830846
Status : Answered
Chosen Option : 1

Q.10 Select the INCORRECTLY spelt word.

- Ans
- 1. Freeze
 - 2. Freind
 - 3. Frigid
 - 4. Fright

Question ID : 65497830828
Status : Answered
Chosen Option : 2

Q.11 Select the most appropriate option to fill in the blank.

War and Peace is a _____ written by Leo Tolstoy.

- Ans
- 1. celebrated
 - 2. notable
 - 3. distinguished
 - 4. masterpiece

Question ID : 65497830830
Status : Answered
Chosen Option : 3

Q.12 The following sentence has been split into four segments. Identify the segment that contains a grammatical error.

The children were / bubbling with excitement / at the thought of / seeing sea.

- Ans
- 1. bubbling with excitement
 - 2. The children were
 - 3. at the thought of
 - 4. seeing sea

Question ID : 65497830837
Status : Answered
Chosen Option : 4

Q.13 Select the most appropriate synonym of the given word.

Remedial

- Ans 1. Superficial
 2. Corrective
 3. Harmful
 4. Medicinal

Question ID : 65497830838
Status : Answered
Chosen Option : 2

Q.14 Select the option that can be used as a one-word substitute for the given group of words.

An area where fruit trees are grown

- Ans 1. Field
 2. Orchard
 3. Garden
 4. Farm

Question ID : 65497830831
Status : Answered
Chosen Option : 2

Q.15 Select the option that can be used as a one-word substitute for the given group of words.

A means of altering one's appearance to conceal one's identity

- Ans 1. Distort
 2. Disguise
 3. Drape
 4. Dress

Question ID : 65497830840
Status : Answered
Chosen Option : 2

Q.16 Select the most appropriate option that can substitute the underlined segment in the given sentence. If there is no need to substitute it, select 'No substitution required'.

If we are not clear about the exact meaning of a word, we should look into a dictionary.

- Ans 1. look on
 2. look to
 3. look of
 4. look up

Question ID : 65497830834
Status : Answered
Chosen Option : 1

Q.17 Select the **INCORRECTLY** spelt word.

- Ans 1. Assistance
 2. Exchanged
 3. Curious
 4. Participant

Question ID : 65497830844
Status : Answered
Chosen Option : 1

Q.18 Select the most appropriate option that can substitute the underlined segment in the given sentence. If there is no need to substitute it, select 'No substitution required'.

Please don't confuse me by giving so many different directions.

- Ans 1. by give so many
 2. No substitution required
 3. with giving so many
 4. by giving so much

Question ID : 65497830845
Status : Answered
Chosen Option : 1

Q.19 The following sentence has been split into four segments. Identify the segment that contains a grammatical error.

The penalty for / not wear masks / in public places / should be increased.

- Ans 1. The penalty for
 2. should be increased
 3. in public places
 4. not wear masks

Question ID : 65497830832
Status : Answered
Chosen Option : 4

Q.20 Select the option that can be used as a one-word substitute for the given group of words.

To reduce to a shorter form intended to stand for the whole

- Ans 1. Abbreviate
 2. Shrink
 3. Protract
 4. Extend

Question ID : 65497830843
Status : Answered
Chosen Option : 1

Comprehension:

In the following passage, some words have been deleted. Read the passage carefully and select the most appropriate option to fill in each blank.

Technology has made our lives simple and fast. The biggest (1)_____ has been the development of the internet. The internet is a (2)_____ of technology. It has brought us closer and people sitting at (3)_____ corners of the world can easily communicate. It facilitates shopping, money (4)_____, online learning etc. Cybercrimes are a result of the misuse of the internet. Children's (5)_____ to online games is another major problem faced by parents today.

SubQuestion No : 21

Q.21 Select the most appropriate option to fill in blank no. 1.

- Ans
- 1. supply
 - 2. value
 - 3. hindrance
 - 4. contribution

Question ID : 65497830848
Status : Answered
Chosen Option : 4

Comprehension:

In the following passage, some words have been deleted. Read the passage carefully and select the most appropriate option to fill in each blank.

Technology has made our lives simple and fast. The biggest (1)_____ has been the development of the internet. The internet is a (2)_____ of technology. It has brought us closer and people sitting at (3)_____ corners of the world can easily communicate. It facilitates shopping, money (4)_____, online learning etc. Cybercrimes are a result of the misuse of the internet. Children's (5)_____ to online games is another major problem faced by parents today.

SubQuestion No : 22

Q.22 Select the most appropriate option to fill in blank no. 2.

- Ans
- 1. favour
 - 2. asset
 - 3. boon
 - 4. burden

Question ID : 65497830849
Status : Answered
Chosen Option : 3

Comprehension:

In the following passage, some words have been deleted. Read the passage carefully and select the most appropriate option to fill in each blank.

Technology has made our lives simple and fast. The biggest (1)_____ has been the development of the internet. The internet is a (2)_____ of technology. It has brought us closer and people sitting at (3)_____ corners of the world can easily communicate. It facilitates shopping, money (4)_____, online learning etc. Cybercrimes are a result of the misuse of the internet. Children's (5)_____ to online games is another major problem faced by parents today.

SubQuestion No : 23

Q.23 Select the most appropriate option to fill in blank no. 3.

- Ans
- 1. distant
 - 2. farther
 - 3. further
 - 4. near

Question ID : 65497830850
Status : Answered
Chosen Option : 4

Comprehension:

In the following passage, some words have been deleted. Read the passage carefully and select the most appropriate option to fill in each blank.

Technology has made our lives simple and fast. The biggest (1)_____ has been the development of the internet. The internet is a (2)_____ of technology. It has brought us closer and people sitting at (3)_____ corners of the world can easily communicate. It facilitates shopping, money (4)_____, online learning etc. Cybercrimes are a result of the misuse of the internet. Children's (5)_____ to online games is another major problem faced by parents today.

SubQuestion No : 24

Q.24 Select the most appropriate option to fill in blank no. 4.

- Ans** 1. transactions
 2. business
 3. contracts
 4. sites

Question ID : **65497830851**
 Status : **Answered**
 Chosen Option : 1

Comprehension:

In the following passage, some words have been deleted. Read the passage carefully and select the most appropriate option to fill in each blank.

Technology has made our lives simple and fast. The biggest (1)_____ has been the development of the internet. The internet is a (2)_____ of technology. It has brought us closer and people sitting at (3)_____ corners of the world can easily communicate. It facilitates shopping, money (4)_____, online learning etc. Cybercrimes are a result of the misuse of the internet. Children's (5)_____ to online games is another major problem faced by parents today.

SubQuestion No : 25

Q.25 Select the most appropriate option to fill in blank no. 5.

- Ans** 1. desire
 2. interest
 3. addiction
 4. indifference

Question ID : **65497830852**
 Status : **Answered**
 Chosen Option : 3

Section : **Part D Hindi**

Q.1 'जो पढ़ने में रोचक लगे' वाक्यांश के लिए एक शब्द होगा-

- Ans** 1. दर्शनीय
 2. गद्य
 3. पठनीय
 4. पद्य

Question ID : **65497830870**
 Status : **Not Answered**
 Chosen Option : --

Q.2 निम्न मुहावरे का अर्थ व्यक्त करने वाले विकल्प का चयन कीजिए।

होश उड़ना

- Ans 1. डर जाना
 2. अयोग्य होना
 3. सपने देखना
 4. सफल होना

Question ID : 65497830864
 Status : Not Answered
 Chosen Option : --

Q.3 सही वर्तनी वाले शब्द का चयन कीजिए।

- Ans 1. परलौकिक
 2. पारलौकीक
 3. परलौकीक
 4. पारलौकिक

Question ID : 65497830853
 Status : Not Answered
 Chosen Option : --

Q.4 दिये गये वाक्यांश के लिए एक शब्द दीजिये।

किए हुए को मानने वाला

- Ans 1. अकृतज्ञ
 2. कृतकार्य
 3. कृतज्ञ
 4. कृतघ्न

Question ID : 65497830862
 Status : Not Answered
 Chosen Option : --

Q.5 रिक्त स्थान के लिए सबसे उपयुक्त शब्द का चयन करें।

भरत को कैकेयी की करनी पर _____ हुआ।

- Ans 1. क्रोध
 2. पश्चाताप
 3. भय
 4. क्षोभ

Question ID : 65497830866
 Status : Not Answered
 Chosen Option : --

Q.6 दिए गए वाक्य में रेखांकित खंड को प्रतिस्थापित करने के लिए सबसे उपयुक्त विकल्प का चयन करें। यदि इसे प्रतिस्थापित करने की आवश्यकता नहीं है, तो विकल्प 'किसी बदलाव की आवश्यकता नहीं है' का चयन करें।

भारत में मासिनराम में सर्वाधिक वर्षा होता है।

- Ans
- 1. सर्वाधिक वर्षा होती है।
 - 2. सर्वाधिक वर्षा हुए है।
 - 3. सर्वाधिक वर्षा हुई है।
 - 4. किसी बदलाव की आवश्यकता नहीं है।

Question ID : 65497830855

Status : Not Answered

Chosen Option : --

Q.7 दिए गए शब्द का विलोम चुनें।

आग्रह

- Ans
- 1. उपग्रह
 - 2. अनुग्रह
 - 3. दुराग्रह
 - 4. विग्रह

Question ID : 65497830861

Status : Not Answered

Chosen Option : --

Q.8 दिए गए वाक्य का वह भाग ज्ञात करें जिसमें कोई त्रुटि है। यदि कोई त्रुटि नहीं है, तो 'कोई त्रुटि नहीं है' चुनें।

कामायनी पढ़कर (1)/ आनन्द का (2)/ अनुभव होता है (3)/ कोई त्रुटि नहीं है (4)

- Ans
- 1. 4
 - 2. 1
 - 3. 3
 - 4. 2

Question ID : 65497830860

Status : Not Answered

Chosen Option : --

Q.9 रिक्त स्थान की पूर्ति के लिए सबसे उपयुक्त शब्द का चयन करें।

बच्चा, माँ-बाप की आँखों का _____ होता है।

- Ans
- 1. सितारा
 - 2. चाँद
 - 3. सूरज
 - 4. तारा

Question ID : 65497830856

Status : Not Answered

Chosen Option : --

Q.10 मुहावरे और उसके अर्थ युक्त सही युग्म की पहचान कीजिए-

- Ans 1. आँखों में धूल झोकना - धोखा देना
 2. अगूठा दिखाना - मुसीबत मोल लेना
 3. अगारे सिर पर धरना - शांति से रहना
 4. अम्बर के तारे गिनना - अच्छी नीद आना

Question ID : 65497830869

Status : Not Answered

Chosen Option : --

Q.11 दिए गए वाक्य का वह भाग ज्ञात करें जिसमें कोई त्रुटि है। यदि कोई त्रुटि नहीं है, तो 'कोई त्रुटि नहीं है' चुनें-

वृक्षों पर कोयल कूक रही है।

- Ans 1. वृक्षों पर
 2. कोई त्रुटि नहीं है।
 3. कोयल कूक
 4. रही है।

Question ID : 65497830858

Status : Not Answered

Chosen Option : --

Q.12 दिए गए वाक्य में रेखांकित खंड को प्रतिस्थापित करने के लिए सबसे उपयुक्त विकल्प का चयन करें। यदि इसे प्रतिस्थापित करने की आवश्यकता नहीं है, तो विकल्प 'किसी बदलाव की आवश्यकता नहीं है' का चयन करें।

मुझसे अब चल नहीं सकता।

- Ans 1. चल नहीं पाता
 2. चला नहीं जाता
 3. चल नहीं गया
 4. किसी बदलाव की आवश्यकता नहीं है।

Question ID : 65497830863

Status : Not Answered

Chosen Option : --

Q.13 दिये गये वाक्य में रेखांकित अंश को प्रतिस्थापित करने के लिए सबसे उपयुक्त विकल्प का चयन करें।

तुम मुझे अपना छोटा सा भाई समझो।

- Ans 1. छोटे भाई
 2. छोटा भाई
 3. छोटा-मोटा भाई
 4. छोटे सा भाई

Question ID : 65497830865

Status : Not Answered

Chosen Option : --

Q.14 सही वर्तनी वाले शब्द का चयन कीजिए।

- Ans 1. प्रतीनिधी
 2. प्रतीनीधी
 3. प्रतिनिधि
 4. प्रतिनीधि

Question ID : 65497830854
 Status : Not Answered
 Chosen Option : --

Q.15 'परिचारक' का पर्यायवाची है-

- Ans 1. धावक
 2. वाहक
 3. चालक
 4. सेवक

Question ID : 65497830872
 Status : Not Answered
 Chosen Option : --

Q.16 दिये गये वाक्य के किस भाग में त्रुटि है?

उनके शासनकाल में दगे हुए।

- Ans 1. शासनकाल
 2. हुए।
 3. में दगे
 4. उनके

Question ID : 65497830871
 Status : Not Answered
 Chosen Option : --

Q.17 दिये गये वाक्यांश के लिए एक शब्द दीजिये।

जिसे बुलाया गया हो

- Ans 1. अनाहूत
 2. अनेर
 3. आहूत
 4. अनिमेष

Question ID : 65497830857
 Status : Not Answered
 Chosen Option : --

Q.18 दिए गए शब्द के समानार्थी शब्द का चयन करें।

उजास

- Ans 1. प्रयास
 2. उन्नति
 3. चमक
 4. उत्तमता

Question ID : 65497830859
 Status : Not Answered
 Chosen Option : --

Q.19 रिक्त स्थान की पूर्ति के लिए सबसे उपयुक्त विकल्प का चयन करें।

इस मशीन में कुछ _____ है।

- Ans
- 1. खटपट
 - 2. बड़बड़
 - 3. गड़बड़
 - 4. झकझक

Question ID : 65497830867
Status : Not Answered
Chosen Option : --

Q.20 अमावस्या को अधेरा छा जाता है।

रेखांकित शब्द का विलोम बताइए-

- Ans
- 1. अधकार
 - 2. अधेरा
 - 3. पूर्णिमा
 - 4. अमास

Question ID : 65497830868
Status : Not Answered
Chosen Option : --

Comprehension:

दिए गए गद्यांश में से कुछ शब्द हटा दिए गए हैं। संबंधित प्रश्नों में प्रत्येक सख्या के लिए सबसे उपयुक्त विकल्प का चयन कीजिए।

आचार्य महावीरप्रसाद द्विवेदी ने हिन्दी निबन्ध के स्वरूप और (1) _____ का (2) _____ किया। भाषा की (3) _____ पर बल देने के कारण इस (4) _____ के निबन्ध प्रौढ़, व्यवस्थित और गम्भीर हैं। इनमें विषयो की विविधता और विचारों की (5) _____ मिलती है।

SubQuestion No : 21

Q.21 गद्यांश के रिक्त स्थान (1) के लिए सर्वाधिक उपयुक्त शब्द होगा-

- Ans
- 1. दिशा
 - 2. रूप
 - 3. स्वर
 - 4. दशा

Question ID : 65497830874
Status : Not Answered
Chosen Option : --

Comprehension:

दिए गए गद्यांश में से कुछ शब्द हटा दिए गए हैं। सबंधित प्रश्नों में प्रत्येक सख्या के लिए सबसे उपयुक्त विकल्प का चयन कीजिए।

आचार्य महावीरप्रसाद द्विवेदी ने हिन्दी निबन्ध के स्वरूप और (1) _____ का (2) _____ किया। भाषा की (3) _____ पर बल देने के कारण इस (4) _____ के निबन्ध प्रौढ़, व्यवस्थित और गम्भीर हैं। इनमें विषयो की विविधता और विचारों की (5) _____ मिलती है।

SubQuestion No : 22

Q.22 गद्यांश के रिक्त स्थान (2) के लिए सर्वाधिक उपयुक्त शब्द होगा-

- Ans
- 1. सयोजन
 - 2. निर्धारण
 - 3. सस्थापन
 - 4. निश्चितिकरण

Question ID : 65497830875

Status : Not Answered

Chosen Option : --

Comprehension:

दिए गए गद्यांश में से कुछ शब्द हटा दिए गए हैं। सबंधित प्रश्नों में प्रत्येक सख्या के लिए सबसे उपयुक्त विकल्प का चयन कीजिए।

आचार्य महावीरप्रसाद द्विवेदी ने हिन्दी निबन्ध के स्वरूप और (1) _____ का (2) _____ किया। भाषा की (3) _____ पर बल देने के कारण इस (4) _____ के निबन्ध प्रौढ़, व्यवस्थित और गम्भीर हैं। इनमें विषयो की विविधता और विचारों की (5) _____ मिलती है।

SubQuestion No : 23

Q.23 गद्यांश के रिक्त स्थान (3) के लिए सर्वाधिक उपयुक्त शब्द होगा-

- Ans
- 1. शुद्धता
 - 2. सुकुमारता
 - 3. प्रौढ़ता
 - 4. कोमलता

Question ID : 65497830876

Status : Not Answered

Chosen Option : --

Comprehension:

दिए गए गद्यांश में से कुछ शब्द हटा दिए गए हैं। सबंधित प्रश्नों में प्रत्येक सख्या के लिए सबसे उपयुक्त विकल्प का चयन कीजिए।

आचार्य महावीरप्रसाद द्विवेदी ने हिन्दी निबन्ध के स्वरूप और (1) _____ का (2) _____ किया। भाषा की (3) _____ पर बल देने के कारण इस (4) _____ के निबन्ध प्रौढ़, व्यवस्थित और गम्भीर हैं। इनमें विषयो की विविधता और विचारों की (5) _____ मिलती है।

SubQuestion No : 24

Q.24 गद्यांश के रिक्त स्थान (4) के लिए सर्वाधिक उपयुक्त शब्द होगा-

- Ans
- 1. युग
 - 2. समय
 - 3. साल
 - 4. पल

Question ID : 65497830877

Status : Not Answered

Chosen Option : --

Comprehension:

दिए गए गद्यांश में से कुछ शब्द हटा दिए गए हैं। सबंधित प्रश्नों में प्रत्येक सख्या के लिए सबसे उपयुक्त विकल्प का चयन कीजिए।

आचार्य महावीरप्रसाद द्विवेदी ने हिन्दी निबन्ध के स्वरूप और (1) _____ का (2) _____ किया। भाषा की (3) _____ पर बल देने के कारण इस (4) _____ के निबन्ध प्रौढ़, व्यवस्थित और गम्भीर हैं। इनमें विषयो की विविधता और विचारों की (5) _____ मिलती है।

SubQuestion No : 25

Q.25 गद्यांश के रिक्त स्थान (5) के लिए सर्वाधिक उपयुक्त शब्द होगा-

- Ans
- 1. गहराई
 - 2. गहनता
 - 3. महानता
 - 4. भिन्नता

Question ID : 65497830878

Status : Not Answered

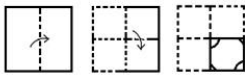
Chosen Option : --

KD Job Updates

Exam Date	30/11/2021
Exam Time :	9:00 AM - 10:30 AM
Subject	Constable GD 2021

Section : Part A General Intelligence and Reasoning

Q.1 The sequence of folding a piece of paper and the manner in which the folded paper has been cut is shown in the following figures. How would this paper look when unfolded?



Ans

- 1.
- 2.
- 3.
- 4.

Question ID : 65497831776
 Status : Answered
 Chosen Option : 4

Q.2 In a certain code language, DANGER is written as EDSHHW. How will SPEEDY be written in that language?

- Ans
- 1. TSIFGD
 - 2. TSJEGE
 - 3. TSIEGE
 - 4. TSJFGD

Question ID : 65497831772
 Status : Answered
 Chosen Option : 2

Q.3 Select the option that is related to the third number in the same way as the second number is related to the first number.

129 : 216 :: 165 : ?

- Ans 1. 252
 2. 306
 3. 269
 4. 348

Question ID : 65497831785
 Status : Answered
 Chosen Option : 1

Q.4 Select the option that is related to the third term in the same way as the second term is related to the first term.

BUMP : NOSD :: PICK : ?

- Ans 1. GIAR
 2. QJBX
 3. LGDL
 4. IEGR

Question ID : 65497831777
 Status : Answered
 Chosen Option : 4

Q.5 Select the correct combination of mathematical signs that can sequentially replace the (?) signs and make the given equation correct.

72 ? 18 ? 11 ? 44

- Ans 1. ×, +, =
 2. ÷, ×, =
 3. ×, +, =
 4. +, -, =

Question ID : 65497831786
 Status : Answered
 Chosen Option : 2

Q.6 'Sword' is related to 'Weapon' in the same way as 'Necklace' is related to '_____'.
 Ans 1. Jewellery
 2. Goldsmith
 3. Women
 4. Neck

Question ID : 65497831790
 Status : Answered
 Chosen Option : 1

Q.7 Select the option in which the given figure is embedded (rotation is NOT allowed).



Ans


✗ 1.



✗ 2.



✓ 3.



✗ 4.



Question ID : 65497831788
 Status : Answered
 Chosen Option : 1

Q.8 Select the letter-cluster from among the given options that can replace the question mark (?) in the following series.

DQH, HUL, MZQ, SFW, ?

Ans ✓ 1. ZMD

✗ 2. ZNE

✗ 3. ZLC

✗ 4. YMC

Question ID : 65497831789
 Status : Answered
 Chosen Option : 1

Q.9 Select the number from among the given options that can replace the question mark (?) in the following series.

13, 15, 12, 17, 10, 21, 8, ?

Ans ✗ 1. 24

✗ 2. 22

✗ 3. 23

✓ 4. 25

Question ID : 65497831782
 Status : Answered
 Chosen Option : 1

Q.10 P, Q, R, S, T and U are six members in a family. P is the husband of Q. U is the brother of Q. R is the son of the only brother of Q. S is the sister of T. P is the father of S. How is U related to T?

- Ans
- 1. Cousin
 - 2. Brother
 - 3. Paternal uncle
 - 4. Maternal uncle

Question ID : 65497831779

Status : Answered

Chosen Option : 4

Q.11 The cost of an apple is four less than twice the cost of a banana, and that of a papaya is half the cost of an apple. If the total cost of the fruits is ₹150, then what is the cost of a banana?

- Ans
- 1. ₹33
 - 2. ₹36
 - 3. ₹39
 - 4. ₹42

Question ID : 65497831775

Status : Not Attempted and Marked For Review

Chosen Option : --

Q.12 Four persons A, B, C and D are playing carrom. A is to the immediate left of C. D is to the immediate right of B. Which statement shows the correct position of A?

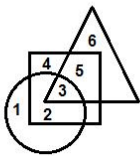
- Ans
- 1. Opposite B
 - 2. Opposite D
 - 3. Immediate left of B
 - 4. Opposite C

Question ID : 65497831791

Status : Answered

Chosen Option : 1

Q.13 In the following diagram, the 'circle' stands for 'soldiers', the 'square' stands for 'Indians', and the 'triangle' stands for 'singers'. The numbers given in the different segments represent persons belonging to that category.



Which category is represented by the number '5'?

- Ans
- 1. Indian singers who are not soldiers
 - 2. Indian soldiers who are not singers
 - 3. Indians who are neither singers nor soldiers
 - 4. Indian singers who are soldiers

Question ID : 65497831792

Status : Answered

Chosen Option : 1

Q.14 Select the correct option that indicates the arrangement of the given words in the order in which they appear in an English dictionary.

1. Terminus
2. Therefore
3. Terrace
4. Thesis
5. Thiamine

- Ans
- 1. 1, 2, 3, 4, 5
 - 2. 1, 3, 2, 4, 5
 - 3. 1, 2, 4, 3, 5
 - 4. 1, 5, 2, 4, 3

Question ID : 65497831780
 Status : Answered
 Chosen Option : 2

Q.15 Four letter-clusters have been given, out of which three are alike in some manner and one is different. Select the letter-cluster that is different.

- Ans
- 1. HFDZX
 - 2. CAYWU
 - 3. TRPNL
 - 4. OMKIG

Question ID : 65497831768
 Status : Answered
 Chosen Option : 4

Q.16 Six people, K, L, M, N, O and P, are sitting on the ground in a hexagonal shape but not necessarily in the same order. K is not sitting next to L or M. N is not sitting next to M or O. L is the neighbour of M. P is in the middle of M and N. What is the correct order of seating positions of the people in clockwise direction?

- Ans
- 1. L-M-P-N-K-O
 - 2. L-N-O-K-M-P
 - 3. L-O-K-P-M-N
 - 4. L-M-N-P-K-O

Question ID : 65497831784
 Status : Not Attempted and Marked For Review
 Chosen Option : --

Q.17 In a certain code language, 'VENDOR' is written as 'TMFLGT'. How will 'CUSTOM' be written in that language?

- Ans
- 1. BSTSPA
 - 2. DTVQPN
 - 3. OMVQWA
 - 4. OTVQMW

Question ID : 65497831778
 Status : Not Answered
 Chosen Option : --

Q.18 Read the given statements and conclusions carefully. Assuming that the information given in the statements is true, even if it appears to be at variance with commonly known facts, decide which of the given conclusions logically follow(s) from the statements.

Statements:

All guavas are pears.
Some kiwis are pears.

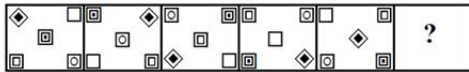
Conclusions:

I. Some kiwis are guavas.
II. Some pears are kiwis.

- Ans**
- 1. Both conclusions I and II follow
 - 2. Only conclusion II follows
 - 3. Neither conclusion I nor II follows
 - 4. Only conclusion I follows

Question ID : 65497831773
Status : Answered
Chosen Option : 2

Q.19 Select the figure from among the given options that can replace the question mark (?) in the following series.



Ans

- 1.
- 2.
- 3.
- 4.

Question ID : 65497831783
Status : Answered
Chosen Option : 3

Q.20 Select the correct mirror image of the given combination when the mirror is placed at the right side.

f h d B 3 1

Ans

- 1.
- 2.
- 3.
- 4.

Question ID : 65497831771

Status : Answered

Chosen Option : 4

Q.21 Study the given pattern carefully and select the number that can replace the question mark (?) in it.

13 30 34
27 ? 14
19 30 22

Ans

- 1. 30
- 2. 34
- 3. 32
- 4. 36

Question ID : 65497831774

Status : Not Answered

Chosen Option : --

Q.22 Select the number from among the given options that can replace the question mark (?) in the following series.

14, 16, 22, 34, 54, 84, ?

Ans

- 1. 126
- 2. 148
- 3. 121
- 4. 112

Question ID : 65497831770

Status : Answered

Chosen Option : 1

Q.23 Select the combination of letters that when sequentially placed in the blanks of the given series will complete the series.

L_PO_LO_OK_OP_KL_POK

Ans

- 1. O, K, P, L, O, O
- 2. O, P, O, K, O, L
- 3. O, P, K, O, L, O
- 4. O, O, P, K, L, O

Question ID : 65497831781

Status : Answered

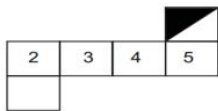
Chosen Option : 1

Q.24 In a certain code language, 'SOBER' is coded as '64' and 'NOSTALGIA' is coded as '107'. How will 'REPAIR' be coded in that language?

- Ans
- 1. 83
 - 2. 67
 - 3. 73
 - 4. 80

Question ID : **65497831769**
 Status : **Not Answered**
 Chosen Option : --

Q.25 Choose the box that is not similar to the box formed from the given sheet of paper when it is folded.



Ans

- 1.
- 2.
- 3.
- 4.

Question ID : **65497831787**
 Status : **Answered**
 Chosen Option : 1

Section : Part B General Knowledge and General Awareness

Q.1 The Mughals were proud of their Timurid ancestry. How did they celebrate this?

- Ans
- 1. By holding events like horse racing and shooting
 - 2. By declaring a particular day as a holiday in the country
 - 3. By each ruler getting a picture made of Timur and himself
 - 4. By dedicating the day to soldiers

Question ID : **65497831808**
 Status : **Not Answered**
 Chosen Option : --

Q.2 Which of the following chemicals is known as vinegar?

- Ans
- 1. Oxalic acid
 - 2. Formic acid
 - 3. Acetic acid
 - 4. Tartaric acid

Question ID : **65497831812**
Status : **Answered**
Chosen Option : **3**

Q.3 With which of the following dance forms is Laxmi Narayana Sastri associated?

- Ans
- 1. Odissi
 - 2. Kathak
 - 3. Kuchipudi
 - 4. Mohiniyattam

Question ID : **65497831810**
Status : **Not Answered**
Chosen Option : --

Q.4 When did the rules under the Fiscal Responsibility and Budget Management Act come into force?

- Ans
- 1. July 2004
 - 2. August 2004
 - 3. August 2003
 - 4. July 2003

Question ID : **65497831802**
Status : **Not Answered**
Chosen Option : --

Q.5 Emma Raducanu is a professional tennis player from _____.

- Ans
- 1. The US
 - 2. Canada
 - 3. Croatia
 - 4. The UK

Question ID : **65497831817**
Status : **Not Answered**
Chosen Option : --

Q.6 Who among the following was a Portuguese viceroy in India?

- Ans
- 1. Robert Clive
 - 2. Comte de Lally
 - 3. Francisco de Almeida
 - 4. Francois Dupleix

Question ID : **65497831801**
Status : **Not Answered**
Chosen Option : --

Q.7 The Constitution (One Hundred and Twenty-Sixth Amendment) Bill, 2019 aims to retain the inclusive character as envisioned by the founding fathers of the Constitution of India by continuing the reservation of seats for the scheduled castes and the scheduled tribes up to _____.

- Ans
- 1. 25 January 2035
 - 2. 25 January 2025
 - 3. 25 January 2040
 - 4. 25 January 2030

Question ID : **65497831814**
 Status : **Not Answered**
 Chosen Option : --

Q.8 Laterite soil is poor in oxides of which among the following?

- Ans
- 1. Aluminium
 - 2. Titanium
 - 3. Iron
 - 4. Silicon

Question ID : **65497831797**
 Status : **Not Answered**
 Chosen Option : --

Q.9 Who wrote 'Gita Rahasya', which is a commentary on the Bhagavad-Gita, in the Mandalay jail of Myanmar?

- Ans
- 1. Bal Gangadhar Tilak
 - 2. Subhas Chandra Bose
 - 3. Aurobindo Ghosh
 - 4. Lala Lajpat Rai

Question ID : **65497831813**
 Status : **Not Answered**
 Chosen Option : --

Q.10 Who chaired 'Aarogya Manthan' 2.0 to celebrate the 2nd anniversary of Ayushman Bharat-Pradhan Mantri Jan Aarogya Yojana?

- Ans
- 1. Dr Ashwini Kumar Choubey
 - 2. Amit Shah
 - 3. Dr Harsh Vardhan
 - 4. Dr Indu Bhushan

Question ID : **65497831809**
 Status : **Answered**
 Chosen Option : **2**

Q.11 Which of the following is a multicellular organism?

- Ans
- 1. Paramecium
 - 2. Amoeba
 - 3. Sponge
 - 4. Chlamydomonas

Question ID : **65497831811**
 Status : **Not Answered**
 Chosen Option : --

Q.12 Neil Nongkynrih is a concert pianist and founder of _____ from India.

- Ans
- 1. East Parade Malayalam Choir
 - 2. Indian Fusion Chamber Choir
 - 3. Shillong Chamber Choir
 - 4. The Mozart Choir of India

Question ID : 65497831793
Status : Not Answered
Chosen Option : --

Q.13 What do you call a region with a large number of deep gullies or ravines?

- Ans
- 1. Badland topography
 - 2. Arid topography
 - 3. Humus region
 - 4. Peninsular region

Question ID : 65497831794
Status : Not Answered
Chosen Option : --

Q.14 _____ has launched its new brand campaign titled 'Contactless Connections', in October 2020.

- Ans
- 1. Contactless PNB Card
 - 2. Contactless ICICI Card
 - 3. Contactless SBI Card
 - 4. Contactless Canara Card

Question ID : 65497831806
Status : Not Answered
Chosen Option : --

Q.15 In which year was the Badminton Association of India formed?

- Ans
- 1. 1967
 - 2. 1956
 - 3. 1934
 - 4. 1978

Question ID : 65497831798
Status : Not Answered
Chosen Option : --

Q.16 According to the Union Budget 2020, when will India host G20 presidency?

- Ans
- 1. 2022
 - 2. 2023
 - 3. 2020
 - 4. 2021

Question ID : 65497831800
Status : Not Answered
Chosen Option : --

Q.17 How many drugs were removed from the National List of Essential Medicines (NLEM) in September 2021?

- Ans 1. 16
 2. 19
 3. 39
 4. 36

Question ID : 65497831815
Status : Not Answered
Chosen Option : --

Q.18 Which of the following countries has the world's largest ice rink called 'Rideau Canal'?

- Ans 1. Canada
 2. Switzerland
 3. Russia
 4. The US

Question ID : 65497831796
Status : Not Answered
Chosen Option : --

Q.19 According to which amended Act, can sons, daughters and their mothers get an equal share of family property?

- Ans 1. Hindu Amendment Act 1950
 2. Hindu Act 1956
 3. Hindu Succession Amendment Act 2005
 4. Hindu Succession Act 1950

Question ID : 65497831805
Status : Not Answered
Chosen Option : --

Q.20 Who among the following is the author of the book 'Letters to Mother'?

- Ans 1. Narendra Modi
 2. Jawaharlal Nehru
 3. Manmohan Singh
 4. PV Narsimha Rao

Question ID : 65497831795
Status : Not Answered
Chosen Option : --

Q.21 Which of the following banks signed a \$1 billion loan agreement with Japan Bank for International Cooperation in October 2020?

- Ans 1. Bank of Baroda
 2. Industrial Development Bank of India
 3. Punjab National Bank
 4. State Bank of India

Question ID : 65497831799
Status : Not Answered
Chosen Option : --

Q.22 Change of a liquid into gas at any temperature below its boiling point is called:

- Ans
- 1. crystallisation
 - 2. evaporation
 - 3. deposition
 - 4. condensation

Question ID : 65497831807
Status : Answered
Chosen Option : 2

Q.23 Which of the following conditions could harm tea plantations?

- Ans
- 1. Temperature above 35°C
 - 2. Rainfall ranging between 150-300 cm
 - 3. Hot and wet climate
 - 4. Plantations along shady trees

Question ID : 65497831816
Status : Not Answered
Chosen Option : --

Q.24 The Persian chronicles described the Muslim Sultans as:

- Ans
- 1. The Incarnation of God
 - 2. The Shadow of God
 - 3. The Disciple of God
 - 4. The Follower of God

Question ID : 65497831803
Status : Not Answered
Chosen Option : --

Q.25 The Mughal Empire had started facing a crisis towards the end of the 17th century. Which of the following was NOT a factor for it?

- Ans
- 1. Aurangzeb had depleted the military and financial resources of his empire by fighting a long war in the Deccan.
 - 2. Under the successors of Aurangzeb, the efficiency of the imperial administration broke down.
 - 3. The later Mughals kept a good check on their powerful 'mansabdars'.
 - 4. The peasant and zamindari rebellions in many parts of North and West India added to the problems.

Question ID : 65497831804
Status : Not Answered
Chosen Option : --

Section : Part C Elementary Mathematics

Q.1 The curved surface area of a cylinder is 96 cm^2 and its volume is 672 cm^3 . Its diameter is:

- Ans
- 1. 32 cm
 - 2. 26 cm
 - 3. 24 cm
 - 4. 28 cm

Question ID : 65497831820
Status : Not Answered
Chosen Option : --

Q.2 If $3 \text{ of } 5 \div 2 + \frac{3x}{1 + \frac{2x}{2 + \frac{2x}{1-x}}} = 12\frac{1}{2}$, what is the value of x ?

- Ans
- ✓ 1. $\frac{35}{33}$
 - ✗ 2. $\frac{25}{13}$
 - ✗ 3. $\frac{34}{33}$
 - ✗ 4. $\frac{15}{11}$

Question ID : 65497831831
 Status : Not Answered
 Chosen Option : --

Q.3 Find CI on ₹8,000 at 15% for 2 years 4 months compounded annually.

- Ans
- ✗ 1. ₹12,008
 - ✗ 2. ₹1,264
 - ✗ 3. ₹11,109
 - ✓ 4. ₹3,109

Question ID : 65497831826
 Status : Answered
 Chosen Option : 4

Q.4 The list price of a fan is ₹4,500 and it is sold at 15% discount. If its final selling price, after allowing a second discount percentage on the list price, is ₹3,213, then the second discount percentage is:

- Ans
- ✗ 1. 15%
 - ✓ 2. 16%
 - ✗ 3. 12%
 - ✗ 4. 18%

Question ID : 65497831839
 Status : Answered
 Chosen Option : 2

Q.5 A certain number of men complete a piece of work in 60 days. If there were 9 more men, then the work would be completed in 50 days. How many men are originally there?

- Ans
- ✓ 1. 45
 - ✗ 2. 55
 - ✗ 3. 48
 - ✗ 4. 42

Question ID : 65497831830
 Status : Answered
 Chosen Option : 1

Q.6 When 154 l of oil is removed from an upright cylindrical tank, the level falls down by 10 cm. What is the diameter (in cm) of the tank?

(Take $\pi = \frac{22}{7}$)

- Ans**
- 1. 220
 - 2. 140
 - 3. 100
 - 4. 70

Question ID : 65497831827
 Status : Not Answered
 Chosen Option : --

Q.7 Bike A moving at a speed of 30 km/h covers some distance for 2 hours, while another bike B moving at a speed of 35 km/h covers the same distance as bike A. What is the ratio of the time taken by bike A to that taken by bike B?

- Ans**
- 1. 5 : 6
 - 2. 8 : 5
 - 3. 6 : 7
 - 4. 7 : 6

Question ID : 65497831832
 Status : Answered
 Chosen Option : 4

Q.8 In an election, a candidate got 75% of the total valid votes. If 20% of the total votes were declared invalid, and the total numbers of votes is 560000, find the number of valid votes polled in favour of the candidate.

- Ans**
- 1. 363000
 - 2. 330000
 - 3. 336000
 - 4. 346000

Question ID : 65497831824
 Status : Answered
 Chosen Option : 3

Q.9 Vessels A and B contain solutions of acid and water. The ratio of acid and water in vessel A is 7 : 5 and that in vessel B is 11 : 13. Four litres of solution from vessel A is mixed with 5 litres of solution from vessel B. What is the ratio of acid and water in the mixture?

- Ans**
- 1. 35 : 37
 - 2. 22 : 21
 - 3. 37 : 35
 - 4. 21 : 22

Question ID : 65497831836
 Status : Answered
 Chosen Option : 3

Q.10 The average weight of 20 students in a group is 54 kg. If 12 students of average weight 52 kg join the group and 7 students of average weight 56 kg leave the group, then what will be the average weight (in kg) of the remaining students in the group?

- Ans**
- 1. 53.84
 - 2. 51.96
 - 3. 52.48
 - 4. 54.24

Question ID : **65497831835**
 Status : **Not Answered**
 Chosen Option : --

Q.11 The time taken by a boat to go 34 km upstream is 25% more than the time it takes to go 40 km downstream. If the speed of the stream is 4 km/h, then what is the speed (in km/h) of the boat in still water?

- Ans**
- 1. 21
 - 2. 24
 - 3. 20
 - 4. 22

Question ID : **65497831842**
 Status : **Not Attempted and Marked For Review**
 Chosen Option : --

Q.12 A sum of money becomes ₹12,600 after 6 years and ₹21,000 after 9 years on compound interest. The sum invested is:

- Ans**
- 1. ₹4,500
 - 2. ₹4,600
 - 3. ₹4,536
 - 4. ₹4,436

Question ID : **65497831822**
 Status : **Not Attempted and Marked For Review**
 Chosen Option : --

Q.13 8 pens and 14 pencils cost as much as 12 pens and 5 pencils. The ratio of the cost of one pen to the cost of one pencil is:

- Ans**
- 1. 9 : 5
 - 2. 9 : 4
 - 3. 7 : 5
 - 4. 8 : 5

Question ID : **65497831819**
 Status : **Not Answered**
 Chosen Option : --

Q.14 The income of X is 20% less than the income of Y, and the income of Z is 35% less than the combined incomes of X and Y. By what percentage is the income of Z more than that of X?

- Ans** 1. 46.25%
 2. 38.8%
 3. 31.6%
 4. 45.5%

Question ID : 65497831840
 Status : Not Answered
 Chosen Option : --

Q.15 A sum amounts to ₹4,260 in 5 years at the rate of 4% p.a. simple interest. What will be the simple interest (in ₹, nearest to a ₹) on the same sum for $4\frac{1}{5}$ years at the rate of $8\frac{1}{2}$ % p.a.?

- Ans** 1. 1,250
 2. 1,267
 3. 1,285
 4. 1,271

Question ID : 65497831837
 Status : Not Attempted and Marked For Review
 Chosen Option : --

Q.16 The total cost price of a watch and a fan is ₹1,170. Rama sells the watch at a profit of 20% and the fan at a profit of 25%. If he earns a total profit of ₹265, then the cost price of the watch is:

- Ans** 1. ₹550
 2. ₹480
 3. ₹450
 4. ₹620

Question ID : 65497831833
 Status : Answered
 Chosen Option : 1

Q.17 A shopkeeper offers successive discounts of 10% and k%. Customers get items marked at ₹1,200 for ₹864. What is the value of k?

- Ans** 1. 15
 2. 20
 3. 80
 4. 25

Question ID : 65497831818
 Status : Answered
 Chosen Option : 2

Q.18 Simplify $2 - \left[\frac{1}{2} + \frac{1}{4} + \frac{1}{6} \div \left(\frac{3}{4} - \frac{1}{2} \right) \right]$.

- Ans
- 1. $\frac{7}{12}$
 - 2. $\frac{1}{12}$
 - 3. $\frac{17}{12}$
 - 4. $\frac{11}{12}$

Question ID : 65497831828
 Status : Answered
 Chosen Option : 1

Q.19 The average weight of students in a class was 58.5 kg. When 8 more students with average weight of 64.5 kg joined the class, then the average weight of all the students increased by 0.96 kg. What was the number of students, initially, in the class?

- Ans
- 1. 40
 - 2. 32
 - 3. 37
 - 4. 42

Question ID : 65497831838
 Status : Not Answered
 Chosen Option : --

Q.20 An article was sold at $x\%$ profit for ₹875. When the same article was sold for ₹896, the profit made was 3% more than the previous profit. The value of x is:

- Ans
- 1. 30
 - 2. 24
 - 3. 25
 - 4. 20

Question ID : 65497831821
 Status : Answered
 Chosen Option : 3

Q.21 Three persons start a morning walk together. Their steps measure 70 cm, 75 cm and 80 cm, respectively. What is the minimum distance each should walk, so that all of them can cover the same distance in complete steps?

- Ans
- 1. 8800 cm
 - 2. 8400 cm
 - 3. 6400 cm
 - 4. 8000 cm

Question ID : 65497831823
 Status : Answered
 Chosen Option : 2

Q.22 Kohli deals with second-hand goods. He bought a second-hand AC for ₹10,000. He spent ₹500 on transport and ₹2,000 on its repair and sold it for ₹15,000. What is his gain or loss percentage?

- Ans**
- 1. 20% gain
 - 2. 18% gain
 - 3. 18% loss
 - 4. 20% loss

Question ID : 65497831829
Status : Answered
Chosen Option : 1

Q.23 A group of persons can complete a piece of work in a certain time. If there were 4 more persons, they would take 2 days less to complete it. If there were 6 persons less, they would take 4 days more to complete it. What is the number of persons, initially, in the group?

- Ans**
- 1. 40
 - 2. 45
 - 3. 36
 - 4. 32

Question ID : 65497831841
Status : Not Answered
Chosen Option : --

Q.24 x is the smallest number of 5-digits which when divided by 10, 15, 24, 35 and 42, leaves a remainder 7 in each case. The sum of the digits of x is:

- Ans**
- 1. 18
 - 2. 19
 - 3. 13
 - 4. 16

Question ID : 65497831834
Status : Not Answered
Chosen Option : --

Q.25 Two numbers are, respectively, 20% and 50% more than a third number. The ratio of the first 2 numbers is:

- Ans**
- 1. 2 : 3
 - 2. 1 : 1
 - 3. 4 : 5
 - 4. 5 : 6

Question ID : 65497831825
Status : Answered
Chosen Option : 3

Q.1 Select the most appropriate meaning of the given idiom.

Bite someone's head off

- Ans
- 1. Ask someone the same question again and again
 - 2. Go on repeating the same point
 - 3. Scold someone for misbehaving
 - 4. Speak angrily without any reason

Question ID : 65497831844
Status : Not Answered
Chosen Option : --

Q.2 Select the option that can be used as a one-word substitute for the given group of words.

Declare someone not guilty

- Ans
- 1. Acquit
 - 2. Sentence
 - 3. Pardon
 - 4. Arrest

Question ID : 65497831860
Status : Answered
Chosen Option : 3

Q.3 Select the most appropriate synonym of the given word.

Grim

- Ans
- 1. Stern
 - 2. Forceful
 - 3. Joyful
 - 4. Arrogant

Question ID : 65497831859
Status : Not Answered
Chosen Option : --

Q.4 Select the INCORRECTLY spelt word.

- Ans
- 1. Melodrama
 - 2. Melody
 - 3. Melodous
 - 4. Malignant

Question ID : 65497831854
Status : Answered
Chosen Option : 3

Q.5 Select the most appropriate option to fill in the blank.

The landscape _____ Hardy to write this fine poem.

- Ans 1. inspired
 2. induced
 3. pestered
 4. incited

Question ID : 65497831855
 Status : Not Answered
 Chosen Option : --

Q.6 Select the most appropriate meaning of the given idiom.

Once in a blue moon

- Ans 1. Happening usually
 2. Taking place very rarely
 3. Doing something very often
 4. When the moon rises

Question ID : 65497831848
 Status : Not Answered
 Chosen Option : --

Q.7 The following sentence has been divided into parts. One of them may contain an error. Select the part that contains the error from the given options. If you don't find any error, select 'No error' as your answer.

In summers, we must take care / to drink enough water / to keep ourselves hydrated.

- Ans 1. to drink enough water
 2. In summers we must take care
 3. No error
 4. to keep ourselves hydrated

Question ID : 65497831845
 Status : Not Answered
 Chosen Option : --

Q.8 Select the most appropriate option that can substitute the underlined segment in the given sentence. If there is no need to substitute it, select 'No substitution required'.

The pack of wolves moving towards the children are a frightening sight.

- Ans 1. was a frightening sight
 2. No substitution required
 3. are an frightening sight
 4. had a frightening sight

Question ID : 65497831850
 Status : Answered
 Chosen Option : 1

Q.9 Select the option that can be used as a one-word substitute for the given group of words.

One who has keen interest in good food

- Ans 1. Gourmet
 2. Hungry
 3. Greedy
 4. Gallant

Question ID : 65497831853
Status : Not Answered
Chosen Option : --

Q.10 Select the option that can be used as a one-word substitute for the given group of words.

A place where birds are kept

- Ans 1. Apiary
 2. Aquarium
 3. Attic
 4. Aviary

Question ID : 65497831849
Status : Not Answered
Chosen Option : --

Q.11 Select the most appropriate option to fill in the blank.

He was _____ by the judge for his courageous actions.

- Ans 1. criticised
 2. discouraged
 3. commended
 4. reprimanded

Question ID : 65497831857
Status : Answered
Chosen Option : 1

Q.12 Select the most appropriate ANTONYM of the given word.

Desperate

- Ans 1. Content
 2. Determined
 3. Frantic
 4. Daring

Question ID : 65497831852
Status : Answered
Chosen Option : 1

Q.13 The following sentence has been split into four segments. Identify the segment that contains a grammatical error.

Everyone needs / to have a home / and to feel secured / and be wanted.

- Ans
- 1. and be wanted
 - 2. Everyone needs
 - 3. and to feel secured
 - 4. to have a home

Question ID : 65497831858
Status : Answered
Chosen Option : 2

Q.14 Select the most appropriate option to fill in the blank.

Sometime back, onion used to be the poor man's food as it was _____.

- Ans
- 1. cheap
 - 2. inferior
 - 3. available
 - 4. low

Question ID : 65497831843
Status : Answered
Chosen Option : 1

Q.15 Select the most appropriate ANTONYM of the given word.

Naive

- Ans
- 1. Experienced
 - 2. Simple
 - 3. Impulsive
 - 4. Sincere

Question ID : 65497831861
Status : Not Answered
Chosen Option : --

Q.16 Select the INCORRECTLY spelt word.

- Ans
- 1. Separate
 - 2. Desparate
 - 3. Considerate
 - 4. Disparate

Question ID : 65497831856
Status : Answered
Chosen Option : 4

Q.17 Parts of the given sentence have been given as options. One of them contains a grammatical error. Select the option that has the error.

After a month-long vacation due to the sudden floods, Mani's school has been resuming today.

- Ans 1. After
 2. has been resuming
 3. due to the sudden floods
 4. a month-long vacation

Question ID : 65497831851
 Status : Answered
 Chosen Option : 2

Q.18 Select the option that will improve the underlined part of the sentence. In case no improvement is needed, select 'No improvement required'.

She frequent go to her old school to visit her teachers.

- Ans 1. frequent goes
 2. frequently goes
 3. No improvement required
 4. frequently going

Question ID : 65497831847
 Status : Answered
 Chosen Option : 2

Q.19 Select the option that will improve the underlined part of the given sentence. In case no improvement is needed, select 'No improvement required'.

Need you please hold my bag for a moment?

- Ans 1. No improvement required
 2. May you
 3. Would you
 4. Should you

Question ID : 65497831862
 Status : Answered
 Chosen Option : 3

Q.20 Select the most appropriate synonym of the given word.

Rift

- Ans 1. Boat
 2. Heal
 3. Break
 4. Bind

Question ID : 65497831846
 Status : Not Answered
 Chosen Option : --

Comprehension:

In the following passage, some words have been deleted. Read the passage carefully and select the most appropriate option to fill in each blank.

When Roald Amundsen first (1) _____ the South Pole in 1911, he could plant (2) _____ flag there whilst, back in (3) _____ Arctic, no explorer ever had the luxury (4) _____ his claim with a flag. If he did, it would (5) _____ end up floating away to Greenland, making it a totally useless exercise.

SubQuestion No : 21

Q.21 Select the most appropriate option to fill in blank no. 1.

Ans 1. had reached

2. reached

3. reach

4. reaching

Question ID : 65497831864

Status : Answered

Chosen Option : 2

Comprehension:

In the following passage, some words have been deleted. Read the passage carefully and select the most appropriate option to fill in each blank.

When Roald Amundsen first (1) _____ the South Pole in 1911, he could plant (2) _____ flag there whilst, back in (3) _____ Arctic, no explorer ever had the luxury (4) _____ his claim with a flag. If he did, it would (5) _____ end up floating away to Greenland, making it a totally useless exercise.

SubQuestion No : 22

Q.22 Select the most appropriate option to fill in blank no. 2.

Ans 1. his

2. its

3. your

4. her

Question ID : 65497831865

Status : Answered

Chosen Option : 1

Comprehension:

In the following passage, some words have been deleted. Read the passage carefully and select the most appropriate option to fill in each blank.

When Roald Amundsen first (1) _____ the South Pole in 1911, he could plant (2) _____ flag there whilst, back in (3) _____ Arctic, no explorer ever had the luxury (4) _____ his claim with a flag. If he did, it would (5) _____ end up floating away to Greenland, making it a totally useless exercise.

SubQuestion No : 23

Q.23 Select the most appropriate option to fill in blank no. 3.

Ans 1. an

2. a

3. any

4. the

Question ID : 65497831866

Status : Answered

Chosen Option : 4

Comprehension:

In the following passage, some words have been deleted. Read the passage carefully and select the most appropriate option to fill in each blank.

When Roald Amundsen first (1) _____ the South Pole in 1911, he could plant (2) _____ flag there whilst, back in (3) _____ Arctic, no explorer ever had the luxury (4) _____ his claim with a flag. If he did, it would (5) _____ end up floating away to Greenland, making it a totally useless exercise.

SubQuestion No : 24

Q.24 Select the most appropriate option to fill in blank no. 4.

- Ans** 1. to secure
 2. secure
 3. secured
 4. securing

Question ID : 65497831867

Status : Answered

Chosen Option : 1

Comprehension:

In the following passage, some words have been deleted. Read the passage carefully and select the most appropriate option to fill in each blank.

When Roald Amundsen first (1) _____ the South Pole in 1911, he could plant (2) _____ flag there whilst, back in (3) _____ Arctic, no explorer ever had the luxury (4) _____ his claim with a flag. If he did, it would (5) _____ end up floating away to Greenland, making it a totally useless exercise.

SubQuestion No : 25

Q.25 Select the most appropriate option to fill in blank no. 5.

- Ans** 1. eventually
 2. entirely
 3. totally
 4. happily

Question ID : 65497831868

Status : Answered

Chosen Option : 1

Section : Part D Hindi

Q.1 दिए गये वाक्यांश के लिए एक शब्द दीजिये।

जो देखा नहीं जा सकता

- Ans** 1. दृष्टिहीन
 2. दृश्य
 3. अदृश्य
 4. दृढव्य

Question ID : 65497831871

Status : Not Answered

Chosen Option : --

Q.2 दिये गये वाक्य में रेखांकित अंश को प्रतिस्थापित करने के लिए सबसे उपयुक्त विकल्प का चयन करें।

मकान गिर जाने का संदेह है।

- Ans
- 1. शोक
 - 2. लोभ
 - 3. डर
 - 4. भ्रम

Question ID : 65497831886
Status : Not Answered
Chosen Option : --

Q.3 'अंशु' किसका पर्यायवाची है?

- Ans
- 1. अमृत
 - 2. स्त्री
 - 3. आँख
 - 4. किरण

Question ID : 65497831883
Status : Not Answered
Chosen Option : --

Q.4 निम्नलिखित में से शुद्ध वर्तनी वाला शब्द कौन सा है?

- Ans
- 1. आविस्कार
 - 2. आविष्कार
 - 3. आविश्कार
 - 4. अविष्कार

Question ID : 65497831884
Status : Not Answered
Chosen Option : --

Q.5 दिए गए शब्द के समानार्थी शब्द का चयन करें।

उन्मूलन

- Ans
- 1. उखाड़ फेंकना
 - 2. अपमान
 - 3. समानता
 - 4. उर्वरक

Question ID : 65497831873
Status : Not Answered
Chosen Option : --

Q.6 दिये गये वाक्य के किस भाग में त्रुटि है?

उनके निधन से देश की अपूरणीय छति हुई है।

- Ans
- 1. छति हुई है।
 - 2. उनके निधन से
 - 3. देश क
 - 4. अपूरणीय

Question ID : 65497831882
Status : Not Answered
Chosen Option : --

Q.7 दिए गए शब्द का विलोम चुनें।

शोक

- Ans
- 1. शोभित
 - 2. अशोभित
 - 3. हर्ष
 - 4. विषाद

Question ID : 65497831878
Status : Not Answered
Chosen Option : --

Q.8 रिक्त स्थान को भरने के लिए सबसे उपयुक्त शब्द का चयन करें।

विफलता का कारण अध्ययन पद्धति का _____ ही था।

- Ans
- 1. आदर्श
 - 2. दोष
 - 3. समुचित
 - 4. विस्तार

Question ID : 65497831875
Status : Not Answered
Chosen Option : --

Q.9 दिये गये वाक्य में रेखांकित अंश को प्रतिस्थापित करने के लिए सबसे उपयुक्त विकल्प का चयन करें।

गुरुजनों पर श्रद्धा करो।

- Ans
- 1. श्रद्धा पूजो।
 - 2. श्रद्धा भरो।
 - 3. श्रद्धा रखो।
 - 4. श्रद्धा दो।

Question ID : 65497831887
Status : Not Answered
Chosen Option : --

Q.10 निम्नलिखित में से शुद्ध वर्तनी वाला शब्द कौन सा है?

- Ans
- 1. सन्यास
 - 2. संन्याष
 - 3. संन्याश
 - 4. संन्यास

Question ID : 65497831885
Status : Not Answered
Chosen Option : --

Q.11 नीचे दिए वाक्यांश के लिए एक शब्द दिए गए विकल्पों में से चुनिए।

जिसके पास कुछ भी न हो

- Ans 1. कंचन
 2. अकिंचन
 3. अक्षम
 4. अकथित

Question ID : 65497831879
 Status : Not Answered
 Chosen Option : --

Q.12 रिक्त स्थान को भरने के लिए सबसे उपयुक्त शब्द का चयन करें।

हिन्दी द्वारा सारे भारत को एक सूत्र में _____ जा सकता है।

- Ans 1. पिरोया
 2. डाला
 3. बांधा
 4. फंसाया

Question ID : 65497831874
 Status : Not Answered
 Chosen Option : --

Q.13 'आँखों में सरसों फूलना' इस मुहावरे का अर्थ कौनसा है?

- Ans 1. गुस्से से आँखें लाल हो जाना
 2. आदर भाव घाट जाना
 3. विवेक न होना
 4. धोखा देना

Question ID : 65497831870
 Status : Not Answered
 Chosen Option : --

Q.14 'चुनाव में अपना मत देने की क्रिया' वाक्यांश के लिए एक शब्द होगा-

- Ans 1. मत विभाजन
 2. मताधिकार
 3. मतपेटी
 4. मतदान

Question ID : 65497831888
 Status : Not Answered
 Chosen Option : --

Q.15 दिए गए वाक्य का वह भाग ज्ञात करें जिसमें कोई त्रुटि है। यदि कोई त्रुटि नहीं है, तो 'कोई त्रुटि नहीं है' चुनें।

इस बात के कहने में(1)/ किसी को(2)/ संकोच न होगा।(3)/ कोई त्रुटि नहीं है। (4)

- Ans 1. 4
 2. 3
 3. 1
 4. 2

Question ID : 65497831877
 Status : Not Answered
 Chosen Option : --

Q.16 दिए गए वाक्य का वह भाग ज्ञात करें जिसमें कोई त्रुटि है। यदि कोई त्रुटि नहीं है, तो 'कोई त्रुटि नहीं है' चुनें।

प्रदर्शनी, प्रायः शहर के उस स्थान पर (1)/ लगाया जाता है, जहाँ (2)/ लोग आसानी से पहुँच सकें। (3)/ कोई त्रुटि नहीं है (4)

Ans 1. 2

2. 1

3. 3

4. 4

Question ID : 65497831872

Status : Not Answered

Chosen Option : --

Q.17 दिए गए शब्द का विलोम चुनें।

प्रवेश

Ans 1. प्रवृत्ति

2. विकास

3. प्रवर

4. द्वार

Question ID : 65497831880

Status : Not Answered

Chosen Option : --

Q.18 रिक्त स्थान को भरने के लिए सबसे उपयुक्त शब्द का चयन करें।

राम ने मुझे पुस्तक _____ की।

Ans 1. वितरित

2. प्राप्त

3. समर्पण

4. समर्पित

Question ID : 65497831876

Status : Not Answered

Chosen Option : --

Q.19 दिए गए चार विकल्पों में से, उस विकल्प का चयन करें जो नीचे दिए मुहावरे का अर्थ व्यक्त करता है।

साँप छछूंदर की गति होना

Ans 1. गुप चुप हो जाना

2. विस्तृत अनुभव होना

3. तुरंत भाग जाना

4. असमंजस की स्थिति होना

Question ID : 65497831881

Status : Not Answered

Chosen Option : --

Q.20 दिए गए वाक्य में रेखांकित खंड को प्रतिस्थापित करने के लिए सबसे उपयुक्त विकल्प का चयन करें। यदि इसे प्रतिस्थापित करने की आवश्यकता नहीं है, तो विकल्प 'किसी बदलाव की आवश्यकता नहीं है' का चयन करें।

ठंडा घड़े का पानी पिलाइए।

- Ans
- 1. किसी बदलाव की आवश्यकता नहीं है।
 - 2. पानी ठंडा घड़े का पिलाइए।
 - 3. ठंडा पानी घड़े का पिलाइए।
 - 4. घड़े का ठंडा पानी पिलाइए।

Question ID : 65497831869

Status : Not Answered

Chosen Option : --

Comprehension:

दिए गए अनुच्छेद में से कुछ शब्द हटा दिए गए हैं। नीचे दिए विकल्पों की सहायता से रिक्त स्थान भरें। प्रत्येक संख्या के लिए सबसे उपयुक्त विकल्प का चयन करें।

धरती वह है जो (1)_____ करती है, सब (2)_____ इस पर रहते हैं, उनका पालन-पोषण करके उनकी रक्षा करती है। धर्म भी हमें (3)_____ करता है। धर्म न हो तो हम काम न कर सकें। अथवा, हम जो धारण करते हैं, मन में निश्चय कर लेते हैं वह (4)_____ है। चंद्र में जो शीतलता है, स्नेह है, वह हममें शांति उत्पन्न करता है। आकाश विस्तार है जिससे हम (5)_____ के विस्तार की प्रेरणा पाते हैं।

SubQuestion No : 21

Q.21 गद्यांश के रिक्त स्थान (1) के लिए सर्वाधिक उपयुक्त शब्द होगा-

- Ans
- 1. धारण
 - 2. ग्रहण
 - 3. गमन
 - 4. चक्कर

Question ID : 65497831890

Status : Not Answered

Chosen Option : --

Comprehension:

दिए गए अनुच्छेद में से कुछ शब्द हटा दिए गए हैं। नीचे दिए विकल्पों की सहायता से रिक्त स्थान भरें। प्रत्येक संख्या के लिए सबसे उपयुक्त विकल्प का चयन करें।

धरती वह है जो (1)_____ करती है, सब (2)_____ इस पर रहते हैं, उनका पालन-पोषण करके उनकी रक्षा करती है। धर्म भी हमें (3)_____ करता है। धर्म न हो तो हम काम न कर सकें। अथवा, हम जो धारण करते हैं, मन में निश्चय कर लेते हैं वह (4)_____ है। चंद्र में जो शीतलता है, स्नेह है, वह हममें शांति उत्पन्न करता है। आकाश विस्तार है जिससे हम (5)_____ के विस्तार की प्रेरणा पाते हैं।

SubQuestion No : 22

Q.22 गद्यांश के रिक्त स्थान (2) के लिए सर्वाधिक उपयुक्त शब्द होगा-

- Ans
- 1. लोग
 - 2. जीव
 - 3. पशु
 - 4. पक्षी

Question ID : 65497831891

Status : Not Answered

Chosen Option : --

Comprehension:

दिए गए अनुच्छेद में से कुछ शब्द हटा दिए गए हैं। नीचे दिए विकल्पों की सहायता से रिक्त स्थान भरें। प्रत्येक संख्या के लिए सबसे उपयुक्त विकल्प का चयन करें।

धरती वह है जो (1) _____ करती है, सब (2) _____ इस पर रहते हैं, उनका पालन-पोषण करके उनकी रक्षा करती है। धर्म भी हमें (3) _____ करता है। धर्म न हो तो हम काम न कर सकें। अथवा, हम जो धारण करते हैं, मन में निश्चय कर लेते हैं वह (4) _____ है। चंद्र में जो शीतलता है, स्नेह है, वह हममें शांति उत्पन्न करता है। आकाश विस्तार है जिससे हम (5) _____ के विस्तार की प्रेरणा पाते हैं।

SubQuestion No : 23

Q.23 गद्यांश के रिक्त स्थान (3) के लिए सर्वाधिक उपयुक्त शब्द होगा-

- Ans
- 1. पालन
 - 2. ग्रहण
 - 3. पोषण
 - 4. धारण

Question ID : 65497831892
Status : Not Answered
Chosen Option : --

Comprehension:

दिए गए अनुच्छेद में से कुछ शब्द हटा दिए गए हैं। नीचे दिए विकल्पों की सहायता से रिक्त स्थान भरें। प्रत्येक संख्या के लिए सबसे उपयुक्त विकल्प का चयन करें।

धरती वह है जो (1) _____ करती है, सब (2) _____ इस पर रहते हैं, उनका पालन-पोषण करके उनकी रक्षा करती है। धर्म भी हमें (3) _____ करता है। धर्म न हो तो हम काम न कर सकें। अथवा, हम जो धारण करते हैं, मन में निश्चय कर लेते हैं वह (4) _____ है। चंद्र में जो शीतलता है, स्नेह है, वह हममें शांति उत्पन्न करता है। आकाश विस्तार है जिससे हम (5) _____ के विस्तार की प्रेरणा पाते हैं।

SubQuestion No : 24

Q.24 गद्यांश के रिक्त स्थान (4) के लिए सर्वाधिक उपयुक्त शब्द होगा-

- Ans
- 1. संकल्प
 - 2. धम
 - 3. कम
 - 4. प्रेम

Question ID : 65497831893
Status : Not Answered
Chosen Option : --

Comprehension:

दिए गए अनुच्छेद में से कुछ शब्द हटा दिए गए हैं। नीचे दिए विकल्पों की सहायता से रिक्त स्थान भरें। प्रत्येक संख्या के लिए सबसे उपयुक्त विकल्प का चयन करें।

धरती वह है जो (1) _____ करती है, सब (2) _____ इस पर रहते हैं, उनका पालन-पोषण करके उनकी रक्षा करती है। धर्म भी हमें (3) _____ करता है। धर्म न हो तो हम काम न कर सकें। अथवा, हम जो धारण करते हैं, मन में निश्चय कर लेते हैं वह (4) _____ है। चंद्र में जो शीतलता है, स्नेह है, वह हममें शांति उत्पन्न करता है। आकाश विस्तार है जिससे हम (5) _____ के विस्तार की प्रेरणा पाते हैं।

SubQuestion No : 25

Q.25 गद्यांश के रिक्त स्थान (5) के लिए सर्वाधिक उपयुक्त शब्द होगा-

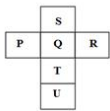
- Ans
- 1. चित्त
 - 2. संस्कृति
 - 3. मस्तिष्क
 - 4. संस्कार

Question ID : 65497831894
Status : Not Answered
Chosen Option : --

Exam Date	29/11/2021
Exam Time :	9:00 AM - 10:30 AM
Subject	Constable GD 2021

Section : Part A General Intelligence and Reasoning

Q.1 A cube is made by folding the given sheet. In the cube so formed, which letter will be on the face opposite to the face having the letter 'Q'?



- Ans
- 1. R
 - 2. T
 - 3. U
 - 4. S

Question ID : 65497830898
 Status : Answered
 Chosen Option : 3

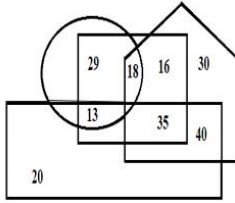
Q.2 Select the figure from among the given options that can replace the question mark (?) in the following series.



- Ans
- 1.
 - 2.
 - 3.
 - 4.

Question ID : 65497830897
 Status : Answered
 Chosen Option : 1

Q.3 In the following figure, the pentagon represents 'Nepali words', the circle represents 'Hindi words', the rectangle represents 'English words', and the square represents 'Persian words'.



Which number represents the words of English and Persian that are included in Hindi words?

- Ans**
- 1. 29
 - 2. 35
 - 3. 13
 - 4. 16

Question ID : **65497830903**
 Status : **Answered**
 Chosen Option : **3**

Q.4 Four letter-clusters have been given, out of which three are alike in some manner and one is different. Select the letter-cluster that is different.

- Ans**
- 1. JMO
 - 2. SVY
 - 3. RUW
 - 4. NQS

Question ID : **65497830887**
 Status : **Answered**
 Chosen Option : **2**

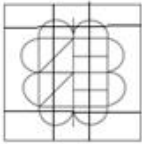
KD Job Updates

Q.5 Select the option in which the given figure is embedded (rotation is NOT allowed).

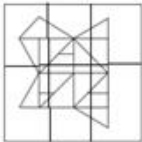


Ans

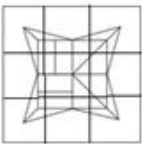
✗ 1.



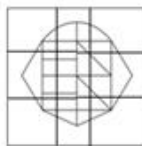
✗ 2.



✗ 3.



✓ 4.



Question ID : 65497830899

Status : Answered

Chosen Option : 4

Q.6 Select the letter-cluster from among the given options that can replace the question mark (?) in the following series.

BY, FU, JQ, NM, RI, ?

Ans ✗ 1. UE

✗ 2. WD

✗ 3. EV

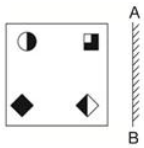
✓ 4. VE

Question ID : 65497830900

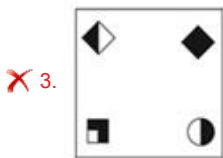
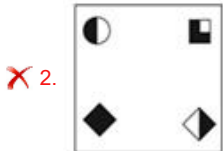
Status : Answered

Chosen Option : 4

Q.7 Select the correct mirror image of the given figure when the mirror is placed at 'AB' as shown.



Ans



Question ID : 65497830890
 Status : Answered
 Chosen Option : 1

Q.8 In a certain code language, 'ATUL' is coded as '1-20-21-12' and 'RAJU' is coded as '18-1-10-21'. How will 'GITA' be coded in that language?

- Ans
- ✗ 1. 5-11-22-1
 - ✗ 2. 8-9-20-1
 - ✓ 3. 7-9-20-1
 - ✗ 4. 6-10-20-1

Question ID : 65497830888
 Status : Answered
 Chosen Option : 3

Q.9 Select the option that is related to the third number in the same way as the second number is related to the first number.

154 : 10 :: 261 : ?

- Ans
- ✗ 1. 10
 - ✓ 2. 9
 - ✗ 3. 7
 - ✗ 4. 8

Question ID : 65497830895
 Status : Answered
 Chosen Option : 2

Q.10 In an imaginary mathematical system, symbol '@' stands for addition, symbol '\$' stands for division, symbol '&' stands for subtraction, and symbol '#' stands for multiplication. What is the value of the following expression?

165 \$ 11 # 15 & 4 @ 6

Ans 1. 227

2. 352

3. 355

4. 157

Question ID : 65497830896

Status : Answered

Chosen Option : 1

Q.11 Manoj is the father of Kapil. Kapil is the only son of Maya. Kavya is the daughter of Maya. Neha is the only daughter of Kavya. How is Kapil related to Neha?

Ans 1. Brother

2. Father

3. Paternal Grandfather

4. Maternal uncle

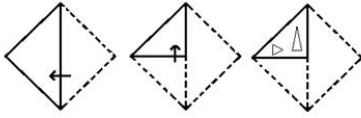
Question ID : 65497830886

Status : Answered

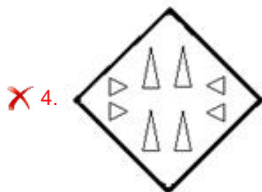
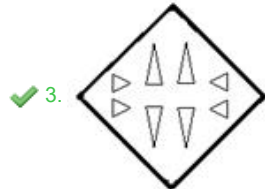
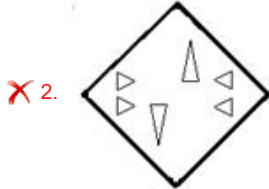
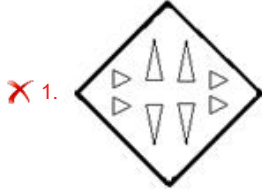
Chosen Option : 4

KD Job Updates

Q.12 The sequence of folding a piece of paper and the manner in which the folded paper has been cut is shown in the following figures. How would this paper look when unfolded?



Ans



Question ID : 65497830883
 Status : Answered
 Chosen Option : 3

Q.13 Select the number from among the given options that can replace the question mark (?) in the following series.

53, 74, 95, 116, ?

- Ans
- ✗ 1. 125
 - ✓ 2. 137
 - ✗ 3. 129
 - ✗ 4. 143

Question ID : 65497830894
 Status : Answered
 Chosen Option : 2

Q.14 In a class of 75 students, 40 students participate in Cricket, 28 students participate in Hockey, and 12 students participate in both Cricket and Hockey, whereas 19 students do not participate in any of the two sports. How many students participate only in Hockey?

- Ans
- 1. 28
 - 2. 44
 - 3. 16
 - 4. 35

Question ID : 65497830882
Status : Answered
Chosen Option : 4

Q.15 Select the combination of letters that when sequentially placed in the blanks of the given series will complete the series.

_ a d f b _ d f b a _ f b a d _

- Ans
- 1. a b f d
 - 2. b a d f
 - 3. d f b a
 - 4. b a f d

Question ID : 65497830892
Status : Answered
Chosen Option : 2

Q.16 In a certain code language, 'INAUGRAL' is written as 'UANILARG'. How will 'PROLIFER' be written in that language?

- Ans
- 1. LOPRERFJ
 - 2. RPLIFIRE
 - 3. ORPIFREF
 - 4. LORPREFI

Question ID : 65497830879
Status : Answered
Chosen Option : 4

Q.17 Nine students, Ajay, Gita, Navya, Vipin, Pinki, Kabir, Mohan, Saroj and Rani, are standing in a row from left to right according to decreasing order of their heights. Ajay is standing at the middle position. Mohan and Kabir are at the third position from the left and right side, respectively. Gita is at either of the ends of the row. Navya is standing to the immediate left of Ajay. Vipin is the tallest among all nine students. Rani is standing between Ajay and Kabir. Pinki is at the eighth position from the right.

Who is at the second position from the right?

- Ans
- 1. Mohan
 - 2. Pinki
 - 3. Saroj
 - 4. Kabir

Question ID : 65497830893
Status : Answered
Chosen Option : 3

Q.18 Select the option that is related to the third letter-cluster in the same way as the second letter-cluster is related to the first letter-cluster.

SNJ : UQL :: XPT : ?

- Ans 1. ZSV
 2. YSV
 3. YTW
 4. ZTU

Question ID : 65497830884
 Status : Answered
 Chosen Option : 1

Q.19 Select the option that is related to the third word in the same way as the second word is related to the first word.

Entomology : Insect :: Ichthyology : ?

- Ans 1. Bacteria
 2. Honey
 3. Coin
 4. Fish

Question ID : 65497830901
 Status : Answered
 Chosen Option : 1

Q.20 Select the correct option that indicates the arrangement of the given words in the order in which they appear in an English dictionary.

1. Delicious
2. Deliberate
3. Delinquent
4. Delirium
5. Delicacy

- Ans 1. 2, 5, 3, 4, 1
 2. 2, 5, 1, 4, 3
 3. 2, 5, 1, 3, 4
 4. 3, 5, 1, 4, 2

Question ID : 65497830891
 Status : Answered
 Chosen Option : 3

Q.21 In a certain code language, 'JAIPUR' is written as 'AJPIRU' and 'BHOPAL' is written as 'HBPOLA'. How will 'INDORE' be written in that language?

- Ans 1. NIODER
 2. DINRUP
 3. NDOI ER
 4. DNEERO

Question ID : 65497830885
 Status : Answered
 Chosen Option : 1

Q.22 Read the given statements and conclusions carefully. Assuming that the information given in the statements is true, even if it appears to be at variance with commonly known facts, decide which of the given conclusions logically follow(s) from the statements.

Statements:

1. Some flowers are chemicals.
2. Some chemicals are herbs.

Conclusions:

- I. No flower is a herb.
- II. Some flowers are herbs.

- Ans**
- 1. Either conclusion I or II follows
 - 2. Only conclusion II follows
 - 3. Only conclusion I follows
 - 4. Both conclusions I and II follow

Question ID : 65497830880

Status : Answered

Chosen Option : 1

Q.23 Select the number from among the given options that can replace the question mark (?) in the following series.

6, 8, 20, 66, ?

- Ans**
- 1. 204
 - 2. 312
 - 3. 284
 - 4. 272

Question ID : 65497830889

Status : Answered

Chosen Option : 3

Q.24 Five friends, Shruti, Shreya, Anup, Ankit and Kiran, are sitting in a row facing towards the south. Shruti is between Shreya and Anup. Kiran and Shreya are sitting at the extreme ends of the west and east, respectively. Who is sitting in the middle?

- Ans**
- 1. Ankit
 - 2. Shruti
 - 3. Kiran
 - 4. Anup

Question ID : 65497830902

Status : Answered

Chosen Option : 4

Q.25 Select the option in which the numbers are related in the same way as are the numbers in the given set.

(8, 112, 49)

- Ans**
- 1. (15, 85, 25)
 - 2. (16, 117, 81)
 - 3. (12, 48, 64)
 - 4. (7, 154, 121)

Question ID : 65497830881

Status : Answered

Chosen Option : 4

Q.1 Who among the following is the recipient of the Nobel Prize for Literature in 2020?

- Ans
- 1. Kazuo Ishiguro
 - 2. Peter Handke
 - 3. Olga Tokarczuk
 - 4. Louise Glück

Question ID : 65497830915
Status : Answered
Chosen Option : 1

Q.2 Which city in Pakistan is the world's leading manufacturer of hand-sewn footballs?

- Ans
- 1. Islamabad
 - 2. Karachi
 - 3. Multan
 - 4. Sialkot

Question ID : 65497830926
Status : Answered
Chosen Option : 2

Q.3 According to the 'Chaturashrama' of the Vedic period, which of the following terms is related to the period of family life?

- Ans
- 1. Vanaprastha
 - 2. Brahmacharya
 - 3. Sanyasa
 - 4. Grihastha

Question ID : 65497830908
Status : Answered
Chosen Option : 1

Q.4 The chemical symbol of potassium is _____.

- Ans
- 1. Ca
 - 2. P
 - 3. Li
 - 4. K

Question ID : 65497830919
Status : Answered
Chosen Option : 4

Q.5 Who among the following is the sixth Guru of Sikhism?

- Ans
- 1. Guru Hargobind
 - 2. Guru Ram Das
 - 3. Guru Angad
 - 4. Guru Arjan

Question ID : 65497830909
Status : Answered
Chosen Option : 2

Q.6 In Agenda 21 of Earth Summit 1992, what does 21 refer to?

- Ans
- 1. 21 months
 - 2. 21st century
 - 3. 21 official talks
 - 4. 21 countries

Question ID : 65497830918
Status : Answered
Chosen Option : 2

Q.7 In which year did the Constituent Assembly of India adopt the National Anthem?

- Ans
- 1. 1950
 - 2. 1947
 - 3. 1952
 - 4. 1949

Question ID : 65497830910
Status : Answered
Chosen Option : 4

Q.8 As of December 2020, which is the only country to win the 60-Over, 50-Over and 20-Over World Cup in Men's Cricket?

- Ans
- 1. Australia
 - 2. West Indies
 - 3. England
 - 4. India

Question ID : 65497830907
Status : Answered
Chosen Option : 4

Q.9 Who among the following was roped in as ambassador of the BAFTA Breakthrough initiative in India in November 2020?

- Ans
- 1. Shahrukh Khan
 - 2. AR Rahman
 - 3. Deepika Padukone
 - 4. Akshay Kumar

Question ID : 65497830925
Status : Answered
Chosen Option : 4

Q.10 Which is the element having the highest atomic mass among the following?

- Ans
- 1. Magnesium
 - 2. Calcium
 - 3. Chlorine
 - 4. Sulphur

Question ID : 65497830920
Status : Answered
Chosen Option : 2

Q.11 The five colours of the rings in the symbol of the Olympic Games are red, blue, green, yellow and _____.

- Ans
- 1. brown
 - 2. orange
 - 3. grey
 - 4. black

Question ID : 65497830928
Status : Answered
Chosen Option : 4

Q.12 Mount Adi Kailash is located in the state of _____.

- Ans
- 1. Arunachal Pradesh
 - 2. Sikkim
 - 3. Uttarakhand
 - 4. Himachal Pradesh

Question ID : 65497830927
Status : Answered
Chosen Option : 3

Q.13 While calculating GDP of India at factor cost, Central Statistical Office assesses the performance of how many different industries?

- Ans
- 1. 8
 - 2. 4
 - 3. 6
 - 4. 10

Question ID : 65497830905
Status : Answered
Chosen Option : 4

Q.14 In which place was the first session of Congress held in a rural area?

- Ans
- 1. Karumadi
 - 2. Punnappa
 - 3. Rampur
 - 4. Faizpur

Question ID : 65497830906
Status : Answered
Chosen Option : 3

Q.15 Which among the following cities is inscribed on the World Heritage list of the UNESCO?

- Ans
- 1. Bhopal
 - 2. Jaipur
 - 3. Cuttack
 - 4. Dharamshala

Question ID : 65497830912
Status : Answered
Chosen Option : 2

Q.16 Dhaulagiri is a peak in _____ Himalaya.

- Ans
- 1. Garhwal
 - 2. Kumaon
 - 3. Bhutan
 - 4. Nepal

Question ID : 65497830914
Status : Answered
Chosen Option : 2

Q.17 The Golden Quadrilateral that connects the four major cities of Delhi, Mumbai, Chennai and Kolkata is part of the _____ project.

- Ans
- 1. Bharatmala
 - 2. Shubhmala
 - 3. Sagarmala
 - 4. Deepmala

Question ID : 65497830913
Status : Answered
Chosen Option : 1

Q.18 Which of the following Articles of the Constitution of India contains the provision for early childhood care and education to children below the age of 6 years?

- Ans
- 1. Article 45
 - 2. Article 35
 - 3. Article 44
 - 4. Article 53

Question ID : 65497830924
Status : Answered
Chosen Option : 3

Q.19 Who among the following is the author of the novel 'Oliver Twist'?

- Ans
- 1. Charlotte Bronte
 - 2. EM Forster
 - 3. Thomas Hardy
 - 4. Charles Dickens

Question ID : 65497830922
Status : Answered
Chosen Option : 4

Q.20 Warli painting is a style of tribal art created by the people of the Warli Tribe of _____.

- Ans
- 1. Bihar
 - 2. Kerala
 - 3. Maharashtra
 - 4. Assam

Question ID : 65497830917
Status : Answered
Chosen Option : 2

Q.21 As per Swachh Survekshan 2020, which of the following is the cleanest cantonment?

- Ans
- 1. Varanasi
 - 2. New Delhi
 - 3. Jalandhar
 - 4. Ranchi

Question ID : 65497830923
Status : Answered
Chosen Option : 2

Q.22 What is the minimum amount of rainfall needed for groundnut cultivation during its growing season?

- Ans
- 1. 130 - 155 cm
 - 2. 20 - 40 cm
 - 3. 50 - 125 cm
 - 4. 30 - 45 cm

Question ID : 65497830904
Status : Answered
Chosen Option : 4

Q.23 Who among the following is NOT a professional badminton player?

- Ans
- 1. Saina Nehwal
 - 2. Sania Mirza
 - 3. Srikanth Kidambi
 - 4. PV Sindhu

Question ID : 65497830916
Status : Answered
Chosen Option : 2

Q.24 In November 2020, the Ministry of Shipping was renamed as the Ministry of Ports, Shipping and _____.

- Ans
- 1. Fisheries
 - 2. Water Wealth
 - 3. Waterways
 - 4. Water

Question ID : 65497830911
Status : Answered
Chosen Option : 3

Q.25 Chaitanya, also known as Sri Gauranga, was a popular Vaishnava saint and reformer from _____.

- Ans
- 1. Madurai
 - 2. Pandharpur
 - 3. Nadia
 - 4. Sringeri

Question ID : 65497830921
Status : Answered
Chosen Option : 3

Q.1 If the average of 23, 26, y , $y + 4$ and $y + 7$ is 30, then the value of y is:

- Ans
- 1. 35
 - 2. 30
 - 3. 32
 - 4. 25

Question ID : 65497830941
Status : Answered
Chosen Option : 2

Q.2 A shopkeeper bought 6 pieces of TV sets at ₹21,000 each and sold all of them at a total price of ₹1,45,920. What was the total profit or loss percentage (correct to two decimal places)?

- Ans
- 1. Profit of 11.21%
 - 2. Loss of 12.71%
 - 3. Profit of 15.81%
 - 4. Loss of 21.19%

Question ID : 65497830936
Status : Answered
Chosen Option : 3

Q.3 The simple interest on a certain sum for 2 years at 10% per annum is half of the compound interest on a sum of ₹5,000 for 2 years at 10% per annum, interest compounded yearly. What is the sum placed on simple interest?

- Ans
- 1. ₹2,750
 - 2. ₹2,500
 - 3. ₹2,625
 - 4. ₹2,575

Question ID : 65497830952
Status : Answered
Chosen Option : 3

Q.4 What percentage of numbers from 1 to 40 has 1 or 9 in the unit's digit?

- Ans
- 1. 25.0
 - 2. 35.0
 - 3. 30.0
 - 4. 20.0

Question ID : 65497830947
Status : Answered
Chosen Option : 4

Q.5 The marked price of a fan is ₹1,780 and it is sold for ₹1,655.40. The percentage discount allowed is:

- Ans
- 1. 7%
 - 2. 6%
 - 3. 9%
 - 4. 5%

Question ID : 65497830938
Status : Answered
Chosen Option : 1

Q.6 A train is going at $\frac{1}{4}$ of its usual speed and it takes an extra 60 min to reach its destination. Find its usual time to cover the same distance.

- Ans**
- 1. 25 min
 - 2. 15 min
 - 3. 10 min
 - 4. 20 min

Question ID : 65497830949
 Status : Answered
 Chosen Option : 2

Q.7 The speed of a car is $1\frac{1}{5}$ times the speed of a bus. A train covers 1200 km in 15 hours. How much distance will the car cover in 7 hours if the speed of the bus is $1\frac{1}{4}$ times the speed of the train?

- Ans**
- 1. 840 km
 - 2. 860 km
 - 3. 720 km
 - 4. 820 km

Question ID : 65497830944
 Status : Answered
 Chosen Option : 1

Q.8 The value of $\frac{43 + \frac{2}{7} \text{ of } 28 - 7}{(72 + 8 \times 2.5) - 1\frac{1}{8} \text{ of } (\frac{4}{3} - \frac{8}{9})}$ is:

- Ans**
- 1. 5
 - 2. 1
 - 3. 20
 - 4. 2

Question ID : 65497830940
 Status : Answered
 Chosen Option : 4

Q.9 From a cuboid with sides 4 cm, 5 cm and 6 cm, cubes of side 1 cm have been removed from every corner. What is the volume of the remaining solid?

- Ans**
- 1. 112 cm^3
 - 2. 60 cm^3
 - 3. 24 cm^3
 - 4. 114 cm^3

Question ID : 65497830932
 Status : Answered
 Chosen Option : 1

Q.10 If the simple interest for five years is equal to 35% of the principal, then the rate of interest is:

- Ans
- 1. 9%
 - 2. 7%
 - 3. 8.5%
 - 4. 8%

Question ID : 65497830943
Status : Answered
Chosen Option : 2

Q.11 What is the value of

$$5 \div 10 \text{ of } 10 \times 4 + 4 \div 4 \text{ of } 4 \times 10 + (10 - 4) \div 16 \times 4?$$

- Ans
- 1. $\frac{16}{5}$
 - 2. $\frac{11}{5}$
 - 3. $\frac{18}{5}$
 - 4. $\frac{21}{5}$

Question ID : 65497830935
Status : Answered
Chosen Option : 2

Q.12 If the volume of a cube is 175616 cm^3 , what is its side?

- Ans
- 1. 36 cm
 - 2. 66 cm
 - 3. 46 cm
 - 4. 56 cm

Question ID : 65497830953
Status : Answered
Chosen Option : 4

Q.13 A man sold an oven for ₹8,875 and made a profit of 25% in the process. What would have been his profit or loss per cent (up to two decimal places), had he sold it for ₹6,937?

- Ans
- 1. Loss, 2.30%
 - 2. Loss, 2.29%
 - 3. Profit, 2.30%
 - 4. Profit, 2.29%

Question ID : 65497830933
Status : Answered
Chosen Option : 2

Q.14 The greatest three-digit number which is divisible by 14, 28 and 42 is:

- Ans
- 1. 964
 - 2. 924
 - 3. 934
 - 4. 942

Question ID : 65497830939
Status : Answered
Chosen Option : 2

Q.15 The average weight of 30 girls in a group is 35 kg. When a new girl is included, the average weight increases by 2 kg. What is the weight of the new girl?

- Ans
- 1. 48 kg
 - 2. 64 kg
 - 3. 79 kg
 - 4. 97 kg

Question ID : 65497830945
Status : Answered
Chosen Option : 4

Q.16 A can complete a project in 10 days and B can complete the same project in 15 days. A and B start working on the project together and A quits 5 days before the project is completed. In how many days is the project completed?

- Ans
- 1. 9
 - 2. 5
 - 3. 10
 - 4. 7

Question ID : 65497830948
Status : Answered
Chosen Option : 4

Q.17 Three numbers A, B and C are in the ratio 4 : 5 : 8. If each number is increased by 15%, 24% and 35%, respectively, then the new ratio of the numbers will be:

- Ans
- 1. 23 : 31 : 54
 - 2. 21 : 31 : 54
 - 3. 23 : 31 : 44
 - 4. 23 : 33 : 54

Question ID : 65497830942
Status : Answered
Chosen Option : 4

Q.18 A man sold an almirah for ₹960 at a loss of 4%. He then sold a folding bed for ₹840 at a profit of 20%. Find his profit or loss.

- Ans**
- 1. 100% loss
 - 2. ₹100 Profit
 - 3. ₹120 loss
 - 4. ₹340 profit

Question ID : 65497830950
Status : Answered
Chosen Option : 2

Q.19 If ₹12,800 is invested in a bank for 5 years at the rate of 9% per annum simple interest, what amount is returned by the bank?

- Ans**
- 1. ₹18,560
 - 2. ₹18,650
 - 3. ₹5,760
 - 4. ₹19,694

Question ID : 65497830934
Status : Answered
Chosen Option : 1

Q.20 Ram bought a chair at 35% discount on its marked price. Had Ram got no discount, he would have had to pay ₹245 more. How much did Ram pay for the chair?

- Ans**
- 1. ₹455
 - 2. ₹425
 - 3. ₹375
 - 4. ₹400

Question ID : 65497830946
Status : Answered
Chosen Option : 1

Q.21 A bag contains ₹310 in the form of 5 rupee, 2 rupee and 1 rupee coins in the ratio 4 : 3 : 5. What is the number of 5 rupee coins?

- Ans**
- 1. 40
 - 2. 30
 - 3. 50
 - 4. 20

Question ID : 65497830951
Status : Answered
Chosen Option : 1

Q.22 Which is the smallest number which when divided by 6, 8 and 10 leaves remainders 4, 6 and 8, respectively?

- Ans**
- 1. 120
 - 2. 58
 - 3. 122
 - 4. 118

Question ID : **65497830929**
Status : **Answered**
Chosen Option : **4**

Q.23 A candidate scores 25% and fails by 32 marks, while another candidate who scores 40% marks, gets 28 marks more than the minimum required marks to pass the examination. How many marks did a candidate score if he scored 72% marks?

- Ans**
- 1. 400
 - 2. 132
 - 3. 288
 - 4. 204

Question ID : **65497830930**
Status : **Answered**
Chosen Option : **3**

Q.24 A and B together can complete a certain work in 20 days, B and C together can complete it in 30 days and C and A together can complete it in 24 days. In how many days will A alone complete $\frac{7}{12}$ part of the same work?

- Ans**
- 1. 30
 - 2. 20
 - 3. 48
 - 4. 80

Question ID : **65497830937**
Status : **Answered**
Chosen Option : **3**

Q.25 What is the fourth proportional to 9, 21 and 123?

- Ans**
- 1. 728
 - 2. 278
 - 3. 287
 - 4. 246

Question ID : **65497830931**
Status : **Answered**
Chosen Option : **2**

Q.1 Select the most appropriate ANTONYM of the given word.

Discreet

- Ans 1. Tactless
 2. Prudent
 3. Proud
 4. Reserved

Question ID : 65497830968
 Status : Answered
 Chosen Option : 2

Q.2 Select the option that can be used as a one-word substitute for the given group of words.

Not having knowledge or experience of a particular subject or activity

- Ans 1. Uninitiated
 2. Expert
 3. Unknown
 4. Familiar

Question ID : 65497830964
 Status : Answered
 Chosen Option : 3

Q.3 Select the INCORRECTLY spelt word.

- Ans 1. Harassment
 2. Suppress
 3. Witness
 4. Embarass

Question ID : 65497830965
 Status : Answered
 Chosen Option : 4

Q.4 Parts of the given sentence have been given as options. One of them contains a grammatical error. Select the option that has the error.

Please stay back for Sunnys first birthday celebration at Taj West End.

- Ans 1. Sunnys
 2. first birthday celebration
 3. at Taj West End
 4. stay back

Question ID : 65497830970
 Status : Answered
 Chosen Option : 1

Q.5 Select the INCORRECTLY spelt word.

- Ans 1. Existence
 2. Garantee
 3. Believe
 4. Consensus

Question ID : 65497830966
 Status : Answered
 Chosen Option : 2

Q.6 Select the most appropriate meaning of the given idiom.

Once and for all

- Ans 1. Rarely
 2. Finally
 3. Gradually
 4. Immediately

Question ID : 65497830956
Status : Answered
Chosen Option : 2

Q.7 Select the most appropriate option to fill in the blank.

I would _____ you to do yoga daily for at least 10 minutes.

- Ans 1. advise
 2. share
 3. order
 4. convey

Question ID : 65497830969
Status : Answered
Chosen Option : 1

Q.8 Select the most appropriate ANTONYM of the given word.

Dull

- Ans 1. Simple
 2. Unintelligent
 3. Disagreeable
 4. Exciting

Question ID : 65497830963
Status : Answered
Chosen Option : 4

Q.9 Select the most appropriate option to fill in the blank.

Permanent tissues are derived from meristematic tissues once they lose their _____ to divide.

- Ans 1. ability
 2. confidentiality
 3. intellectuality
 4. sentimentality

Question ID : 65497830957
Status : Answered
Chosen Option : 1

Q.10 Select the most appropriate synonym of the given word.

Mayhem

- Ans 1. Chaos
 2. Order
 3. Rebel
 4. Plunder

Question ID : 65497830971
 Status : Answered
 Chosen Option : 1

Q.11 Select the most appropriate synonym of the given word.

Confine

- Ans 1. Ignore
 2. Restrict
 3. Allow
 4. Open

Question ID : 65497830955
 Status : Answered
 Chosen Option : 2

Q.12 The following sentence has been split into four segments. Identify the segment that contains a grammatical error.

The players have admitted / to have done / a month's rigorous training / before the match.

- Ans 1. a month's rigorous training
 2. to have done
 3. before the match
 4. The players have admitted

Question ID : 65497830962
 Status : Answered
 Chosen Option : 2

Q.13 Select the most appropriate meaning of the given idiom.

Under the weather

- Ans 1. Able to face the cold
 2. Extremely active
 3. Ready to go out
 4. Slightly ill

Question ID : 65497830960
 Status : Answered
 Chosen Option : 3

Q.14 Select the option that can be used as a one-word substitute for the given group of words.

A game that no one wins

- Ans
- 1. Match
 - 2. Pastime
 - 3. Sport
 - 4. Draw

Question ID : 65497830961
Status : Answered
Chosen Option : 4

Q.15 Select the most appropriate option that can substitute the underlined word in the given sentence.

My teacher described an interesting slaughter she had with one of her students.

- Ans
- 1. encounter
 - 2. harbinger
 - 3. plunder
 - 4. volunteer

Question ID : 65497830959
Status : Answered
Chosen Option : 1

Q.16 Select the most appropriate option to fill in the blank.

Retail sales of consumer goods and automobiles witnessed a sharp spike during the _____ season.

- Ans
- 1. celebrated
 - 2. festive
 - 3. concert
 - 4. gala

Question ID : 65497830967
Status : Answered
Chosen Option : 2

Q.17 Select the most appropriate option that can substitute the underlined segment in the given sentence. If there is no need to substitute it, select 'No substitution required'.

I haven't found a job yet but I am going to keep trying.

- Ans
- 1. keep up trying
 - 2. keep to trying
 - 3. No substitution required
 - 4. keep on the trying

Question ID : 65497830973
Status : Answered
Chosen Option : 3

Q.18 Select the most appropriate option that can substitute the underlined word in the given sentence.

As a boy, Ravidas used to be very outspoken and avoided all company.

- Ans 1. vulnerable
 2. timid
 3. dashing
 4. bold

Question ID : 65497830958
 Status : Answered
 Chosen Option : 4

Q.19 Select the option that can be used as a one-word substitute for the given group of words.

The state of being married

- Ans 1. Matrilineal
 2. Material
 3. Matrimony
 4. Matriarchy

Question ID : 65497830972
 Status : Answered
 Chosen Option : 1

Q.20 The following sentence has been divided into parts. One of them may contain an error. Select the part that contains the error from the given options. If you don't find any error, select 'No error' as your answer.

John and I likes / to go fishing / in the evenings.

- Ans 1. No error
 2. John and I likes
 3. in the evenings
 4. to go fishing

Question ID : 65497830954
 Status : Answered
 Chosen Option : 2

Comprehension:

In the following passage, some words have been deleted. Read the passage carefully and select the most appropriate option to fill in each blank.

India remains one of the most ethnically diverse countries in the world. (1)_____ from its many religions and sects, India (2)_____ home to innumerable castes and tribes, as well (3)_____ to more than a dozen major and (4)_____ of minor linguistic groups from (5)_____ language families unrelated to one another.

SubQuestion No : 21

Q.21 Select the most appropriate option to fill in blank no. 1.

- Ans 1. Separate
 2. Together
 3. Outside
 4. Apart

Question ID : 65497830975
 Status : Answered
 Chosen Option : 4

Comprehension:

In the following passage, some words have been deleted. Read the passage carefully and select the most appropriate option to fill in each blank.

India remains one of the most ethnically diverse countries in the world. (1)_____ from its many religions and sects, India (2)_____ home to innumerable castes and tribes, as well (3)_____ to more than a dozen major and (4)_____ of minor linguistic groups from (5)_____ language families unrelated to one another.

SubQuestion No : 22

Q.22 Select the most appropriate option to fill in blank no. 2.

- Ans 1. were
 2. be
 3. am
 4. is

Question ID : 65497830976

Status : Answered

Chosen Option : 4

Comprehension:

In the following passage, some words have been deleted. Read the passage carefully and select the most appropriate option to fill in each blank.

India remains one of the most ethnically diverse countries in the world. (1)_____ from its many religions and sects, India (2)_____ home to innumerable castes and tribes, as well (3)_____ to more than a dozen major and (4)_____ of minor linguistic groups from (5)_____ language families unrelated to one another.

SubQuestion No : 23

Q.23 Select the most appropriate option to fill in blank no. 3.

- Ans 1. as
 2. with
 3. so
 4. by

Question ID : 65497830977

Status : Answered

Chosen Option : 1

Comprehension:

In the following passage, some words have been deleted. Read the passage carefully and select the most appropriate option to fill in each blank.

India remains one of the most ethnically diverse countries in the world. (1)_____ from its many religions and sects, India (2)_____ home to innumerable castes and tribes, as well (3)_____ to more than a dozen major and (4)_____ of minor linguistic groups from (5)_____ language families unrelated to one another.

SubQuestion No : 24

Q.24 Select the most appropriate option to fill in blank no. 4.

- Ans 1. hundreds
 2. loads
 3. sufficient
 4. ample

Question ID : 65497830978

Status : Answered

Chosen Option : 1

Comprehension:

In the following passage, some words have been deleted. Read the passage carefully and select the most appropriate option to fill in each blank.

India remains one of the most ethnically diverse countries in the world. (1)_____ from its many religions and sects, India (2)_____ home to innumerable castes and tribes, as well (3)_____ to more than a dozen major and (4)_____ of minor linguistic groups from (5)_____ language families unrelated to one another.

SubQuestion No : 25

Q.25 Select the most appropriate option to fill in blank no. 5.

- Ans 1. several
 2. abundant
 3. quite
 4. moderate

Question ID : 65497830979
 Status : Answered
 Chosen Option : 1

Section : Part D Hindi

Q.1 दिए गए वाक्य का वह भाग ज्ञात करें जिसमें कोई त्रुटि है। यदि कोई त्रुटि नहीं है, तो 'कोई त्रुटि नहीं है' विकल्प को चुनें।

सुषमा घी से रोटी बनाई।

- Ans 1. सुषमा
 2. कोई त्रुटि नहीं
 3. रोटी बनाई
 4. घी से

Question ID : 65497830983
 Status : Not Answered
 Chosen Option : --

Q.2 'जिसकी तुलना न की जा सके' वाक्यांश के लिए एक शब्द होगा-

- Ans 1. अन्यमनस्क
 2. अनुपम
 3. तुलनीय
 4. अतुलनीय

Question ID : 65497830999
 Status : Not Answered
 Chosen Option : --

Q.3 रिक्त स्थान की पूर्ति के लिए सबसे उपयुक्त शब्द का चयन करें-

_____ तुम निर्भय हो उतने ही ईमानदार भी हो।

- Ans 1. जितने
 2. कितने
 3. जैसे
 4. वैसे

Question ID : 65497830989
 Status : Not Answered
 Chosen Option : --

Q.4 सही वर्तनी वाले शब्द का चयन करें।

- Ans 1. अविस्मरणीय
 2. अविस्मरणिय
 3. अविस्मरणीय
 4. अविस्मर्णीय

Question ID : 65497830992
 Status : Not Answered
 Chosen Option : --

Q.5 'आँख खुलना' मुहावरे का अर्थ बताइए-

- Ans 1. क्रोध आना
 2. सावधान होना
 3. जानकार होना
 4. सोकर उठना

Question ID : 65497830988
 Status : Not Answered
 Chosen Option : --

Q.6 दिए गए शब्द के समानार्थी शब्द का चयन करें।

आँसू

- Ans 1. जुल्फ
 2. व्यादा
 3. नीर
 4. अश्रु

Question ID : 65497830984
 Status : Not Answered
 Chosen Option : --

Q.7 सही वर्तनी वाले शब्द का चयन करें।

- Ans 1. अर्धवारषिक
 2. अरधवार्षिक
 3. अर्धवार्षिक
 4. अर्धवार्षिक

Question ID : 65497830993
 Status : Not Answered
 Chosen Option : --

Q.8 दिए गए शब्द के समानार्थी शब्द का चयन करें।

राजा

- Ans 1. वृन्द
 2. यति
 3. विप्र
 4. नृप

Question ID : 65497830996
 Status : Not Answered
 Chosen Option : --

Q.9 दिए गए वाक्य का वो भाग ज्ञात करें जिसमें कोई त्रुटि है। यदि कोई त्रुटि नहीं है, तो 'कोई त्रुटि नहीं है' चुनें।

शिकारी ने (1) भूख से मचलते हुए (2) हिरण को छोड़ दिया। (3) कोई त्रुटि नहीं है (4)

- Ans
- 1. 4
 - 2. 3
 - 3. 2
 - 4. 1

Question ID : 65497830985

Status : Not Answered

Chosen Option : --

Q.10 विकल्पों में से कौन सा निम्न शब्द का विलोम नहीं है-

कल्पित

- Ans
- 1. यथार्थ
 - 2. अकल्पित
 - 3. अयथार्थ
 - 4. वास्तविक

Question ID : 65497830990

Status : Not Answered

Chosen Option : --

Q.11 दिए गए वाक्य का वह भाग ज्ञात करें जिसमें कोई त्रुटि है। यदि कोई त्रुटि नहीं है, तो 'कोई त्रुटि नहीं है' चुनें।

मैंने तुम्हें (1) अनेको बार (2) कहा है (3) कोई त्रुटि नहीं है (4)

- Ans
- 1. 3
 - 2. 4
 - 3. 2
 - 4. 1

Question ID : 65497830995

Status : Not Answered

Chosen Option : --

Q.12 दिए गए वाक्य में रेखांकित खंड को प्रतिस्थापित करने के लिए सबसे उपयुक्त विकल्प का चयन करें। यदि इसे प्रतिस्थापित करने की आवश्यकता नहीं है, तो विकल्प 'किसी बदलाव की आवश्यकता नहीं है' का चयन करें।

भोजन करके हमने यात्रा प्रारंभ किया।

- Ans
- 1. प्रारंभ किए
 - 2. प्रारंभ किया
 - 3. प्रारंभ की
 - 4. किसी बदलाव की आवश्यकता नहीं है।

Question ID : 65497830982

Status : Not Answered

Chosen Option : --

Q.13 राज्य के प्रति द्रोह करनेवाला - वाक्यांश के लिए एक शब्द चुनिए।

- Ans 1. राजद्रोही
 2. शहीद
 3. राष्ट्रप्रेमी
 4. राज्य

Question ID : 65497830980
 Status : Not Answered
 Chosen Option : --

Q.14 दिए गये वाक्यांश के लिए एक शब्द दीजिये।

जिसकी गिनती न की जा सके

- Ans 1. अगणनीय
 2. अकरणीय
 3. अगङ्नीय
 4. अकर्मणीय

Question ID : 65497830987
 Status : Not Answered
 Chosen Option : --

Q.15 दिए गए शब्द के विलोम शब्द का चयन करें।

कर्कश

- Ans 1. मधुर
 2. कड़वा
 3. कटु
 4. मधुप

Question ID : 65497830986
 Status : Not Answered
 Chosen Option : --

Q.16 दिए गए वाक्य में रेखांकित खंड को प्रतिस्थापित करने के लिए सबसे उपयुक्त विकल्प का चयन करें।
 यदि इसे प्रतिस्थापित करने की आवश्यकता नहीं है, तो विकल्प 'किसी बदलाव की आवश्यकता नहीं है'
 का चयन करें।

कामिनी को अपने माता-पिता के वचनों के ऊपर श्रद्धा थी।

- Ans 1. किसी बदलाव की आवश्यकता नहीं है।
 2. वचन ऊपर
 3. वचन के ऊपर
 4. वचनों पर

Question ID : 65497830994
 Status : Not Answered
 Chosen Option : --

Q.17 रिक्त स्थान की पूर्ति के लिए सबसे उपयुक्त शब्द का चयन कीजिए।

भारतीय सस्कृति को मैंने _____ में देखा।

- Ans
- 1. गलियो-गलियो
 - 2. गाँवो-गाँवो
 - 3. गाँव-गाँव
 - 4. नगरो-नगरो

Question ID : 65497830981
Status : Not Answered
Chosen Option : --

Q.18 नीचे दिए वाक्य में रिक्त-स्थान की पूर्ति के लिए सबसे उपयुक्त शब्द का चयन करें।

पत्ता _____ है तो भी कुत्ते भौकते हैं।

- Ans
- 1. फड़फड़ाता
 - 2. खड़कता
 - 3. सरकता
 - 4. फड़कता

Question ID : 65497830997
Status : Not Answered
Chosen Option : --

Q.19 दिए गए वाक्य में रेखांकित खंड को प्रतिस्थापित करने के लिए सबसे उपयुक्त विकल्प का चयन करें।
यदि इसे प्रतिस्थापित करने की आवश्यकता नहीं है, तो विकल्प 'किसी बदलाव की आवश्यकता नहीं है'
का चयन करें।

हवा का हल्का-सा झोका आया।

- Ans
- 1. धोका
 - 2. ढोका
 - 3. किसी बदलाव की आवश्यकता नहीं है।
 - 4. झापटा

Question ID : 65497830998
Status : Not Answered
Chosen Option : --

Q.20 उस विकल्प का चयन करें जो नीचे दिए गये मुहावरे का अर्थ व्यक्त करता है-

जी को रोग लगाना

- Ans
- 1. दिल घबराना
 - 2. उम्मीद न रहना
 - 3. फिक्र में रहना
 - 4. रज होना

Question ID : 65497830991
Status : Not Answered
Chosen Option : --

Comprehension:

नीचे दिए गए गद्यांश में से कुछ शब्द हटा दिए गए हैं। संबंधित प्रश्नों में प्रत्येक सख्खा के लिए सबसे उपयुक्त विकल्प का चयन करें।

स्वतंत्रता का इतिहास बलिदानों का इतिहास है। हमें (1) _____ भीख में नहीं मिली। उसे पाने के लिए (2) _____ सघर्ष करना पड़ा। कितने ही युवकों को प्राणों की बलि देनी पड़ी। सन् 1857 में (3) _____ स्वतंत्रता संग्राम हुआ। उसमें लक्ष्मीबाई, तात्याटोपे, बहादुर शाह ज़फर जैसे अनेक (4) _____ ने बलिदान दिया। उस सघर्ष के बाद अंग्रेजों ने भारत पर खूब अत्याचार किए। कुछ सालों तक सघर्ष रूक गया। किंतु आज़ादी की (5) _____ सुलगती रही।

SubQuestion No : 21

Q.21 गद्यांश के रिक्त स्थान (1) के लिए सर्वाधिक उपयुक्त शब्द होगा-

- Ans
- 1. राजतंत्र
 - 2. स्वतंत्रता
 - 3. लोकतंत्र
 - 4. परतंत्रता

Question ID : 65497831001

Status : Not Answered

Chosen Option : --

Comprehension:

नीचे दिए गए गद्यांश में से कुछ शब्द हटा दिए गए हैं। संबंधित प्रश्नों में प्रत्येक सख्खा के लिए सबसे उपयुक्त विकल्प का चयन करें।

स्वतंत्रता का इतिहास बलिदानों का इतिहास है। हमें (1) _____ भीख में नहीं मिली। उसे पाने के लिए (2) _____ सघर्ष करना पड़ा। कितने ही युवकों को प्राणों की बलि देनी पड़ी। सन् 1857 में (3) _____ स्वतंत्रता संग्राम हुआ। उसमें लक्ष्मीबाई, तात्याटोपे, बहादुर शाह ज़फर जैसे अनेक (4) _____ ने बलिदान दिया। उस सघर्ष के बाद अंग्रेजों ने भारत पर खूब अत्याचार किए। कुछ सालों तक सघर्ष रूक गया। किंतु आज़ादी की (5) _____ सुलगती रही।

SubQuestion No : 22

Q.22 गद्यांश के रिक्त स्थान (2) के लिए सर्वाधिक उपयुक्त शब्द होगा-

- Ans
- 1. साधारण
 - 2. आसान
 - 3. कठिन
 - 4. असामान्य

Question ID : 65497831002

Status : Not Answered

Chosen Option : --

Comprehension:

नीचे दिए गए गद्यांश में से कुछ शब्द हटा दिए गए हैं। संबंधित प्रश्नों में प्रत्येक सख्खा के लिए सबसे उपयुक्त विकल्प का चयन करें।

स्वतंत्रता का इतिहास बलिदानों का इतिहास है। हमें (1) _____ भीख में नहीं मिली। उसे पाने के लिए (2) _____ सघर्ष करना पड़ा। कितने ही युवकों को प्राणों की बलि देनी पड़ी। सन् 1857 में (3) _____ स्वतंत्रता संग्राम हुआ। उसमें लक्ष्मीबाई, तात्याटोपे, बहादुर शाह ज़फर जैसे अनेक (4) _____ ने बलिदान दिया। उस सघर्ष के बाद अंग्रेजों ने भारत पर खूब अत्याचार किए। कुछ सालों तक सघर्ष रूक गया। किंतु आज़ादी की (5) _____ सुलगती रही।

SubQuestion No : 23

Q.23 गद्यांश के रिक्त स्थान (3) के लिए सर्वाधिक उपयुक्त शब्द होगा-

- Ans
- 1. चतुर्थ
 - 2. तृतीय
 - 3. द्वितीय
 - 4. प्रथम

Question ID : 65497831003

Status : Not Answered

Chosen Option : --

Comprehension:

नीचे दिए गए गद्यांश में से कुछ शब्द हटा दिए गए हैं। संबंधित प्रश्नों में प्रत्येक सख्खा के लिए सबसे उपयुक्त विकल्प का चयन करें।

स्वतंत्रता का इतिहास बलिदानों का इतिहास है। हमें (1) _____ भीख में नहीं मिली। उसे पाने के लिए (2) _____ सघर्ष करना पड़ा। कितने ही युवकों को प्राणों की बलि देनी पड़ी। सन् 1857 में (3) _____ स्वतंत्रता संग्राम हुआ। उसमें लक्ष्मीबाई, तात्याटोपे, बहादुर शाह ज़फर जैसे अनेक (4) _____ ने बलिदान दिया। उस सघर्ष के बाद अंग्रेजों ने भारत पर खूब अत्याचार किए। कुछ सालों तक सघर्ष रूक गया। किंतु आज़ादी की (5) _____ सुलगती रही।

SubQuestion No : 24

Q.24 गद्यांश के रिक्त स्थान (4) के लिए सर्वाधिक उपयुक्त शब्द होगा-

- Ans
- 1. दीवानो
 - 2. सेनानियो
 - 3. बहादुरो
 - 4. सैनिको

Question ID : 65497831004

Status : Not Answered

Chosen Option : --

Comprehension:

नीचे दिए गए गद्यांश में से कुछ शब्द हटा दिए गए हैं। संबंधित प्रश्नों में प्रत्येक सख्खा के लिए सबसे उपयुक्त विकल्प का चयन करें।

स्वतंत्रता का इतिहास बलिदानों का इतिहास है। हमें (1) _____ भीख में नहीं मिली। उसे पाने के लिए (2) _____ सघर्ष करना पड़ा। कितने ही युवकों को प्राणों की बलि देनी पड़ी। सन् 1857 में (3) _____ स्वतंत्रता संग्राम हुआ। उसमें लक्ष्मीबाई, तात्याटोपे, बहादुर शाह ज़फर जैसे अनेक (4) _____ ने बलिदान दिया। उस सघर्ष के बाद अंग्रेजों ने भारत पर खूब अत्याचार किए। कुछ सालों तक सघर्ष रूक गया। किंतु आज़ादी की (5) _____ सुलगती रही।

SubQuestion No : 25

Q.25 गद्यांश के रिक्त स्थान (5) के लिए सर्वाधिक उपयुक्त शब्द होगा-

- Ans
- 1. चिनगारी
 - 2. वायु
 - 3. लकड़ी
 - 4. लपट

Question ID : 65497831005

Status : Not Answered

Chosen Option : --

Exam Date	15/12/2021
Exam Time :	4:00 PM - 5:30 PM
Subject	Constable GD 2021

Section : Part A General Intelligence and Reasoning

Q.1 Select the option in which the numbers are related in the same way as are the numbers in the given set.

(15, 48, 98)

- Ans 1. (21, 66, 134)
 2. (18, 58, 101)
 3. (24, 74, 150)
 4. (17, 55, 105)

Question ID : 65497834818
 Status : Not Answered
 Chosen Option : --

Q.2 Select the option that is related to the third letter-cluster in the same way as the second letter-cluster is related to the first letter-cluster.

IMR : VRM :: FJO : ?

- Ans 1. TPJ
 2. TRL
 3. SOJ
 4. TPK

Question ID : 65497834838
 Status : Answered
 Chosen Option : 3

Q.3 Select the combination of letters that when sequentially placed in the blanks of the given series will complete the series.

E J _ F K _ _ _ Q H _ _ I _ S

- Ans 1. RLMOPGN
 2. GOMRNLP
 3. OPGLMRN
 4. PGRNMOL

Question ID : 65497834830
 Status : Answered
 Chosen Option : 3

Q.4 If 'ORCHID' is known as 'DAISY', 'DAISY' is known as 'LOTUS', 'LOTUS' is known as 'JASMINE' and 'JASMINE' is known as 'TULIP', then what is the national flower of India?

- Ans
- 1. DAISY
 - 2. TULIP
 - 3. LOTUS
 - 4. JASMINE

Question ID : 65497834839
 Status : Answered
 Chosen Option : 4

Q.5 Four letter-clusters have been given, out of which three are alike in some manner and one is different. Select the letter-cluster that is different.

- Ans
- 1. ABEJ
 - 2. UCGK
 - 3. OPSX
 - 4. EFIN

Question ID : 65497834825
 Status : Answered
 Chosen Option : 2

Q.6 In a certain code language, 'DECK' is written as 'EGFO'. How will 'FINDER' be written in that language?

- Ans
- 1. GJODFS
 - 2. GKQHJX
 - 3. GKPFGU
 - 4. GHOGIX

Question ID : 65497834816
 Status : Answered
 Chosen Option : 2

Q.7 Select the correct mirror image of the given combination when the mirror is placed at 'PQ' as shown.



- Ans
- 1. AIRAHAI
 - 2. AIRAHAI
 - 3. NAHARIA
 - 4. AHAIARIA

Question ID : 65497834828
 Status : Answered
 Chosen Option : 2

Q.8 Anuj's salary is twice the salary of Manoj. Ramnathan's salary is half the salary of Vikram. Manoj's salary is ₹15,000 less than the salary of Ramnathan. If the salary of Anuj is ₹20,000, what is the total salary of all the four persons?

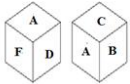
- Ans
- 1. ₹1,30,000
 - 2. ₹1,00,000
 - 3. ₹1,05,000
 - 4. ₹1,15,000

Question ID : 65497834819

Status : Answered

Chosen Option : 3

Q.9 Two different positions of the same dice are shown, the six faces of which are marked with the letters A to F. Select the letter that will be on the face opposite to the one having A.



- Ans
- 1. C
 - 2. B
 - 3. E
 - 4. F

Question ID : 65497834836

Status : Answered

Chosen Option : 3

Q.10 If '-' stands for '+', '+' stands for 'x', '÷' stands for '-' and 'x' stands for '+', then $80 - 20 + 10 \div 8 \times 10$ is equal to:

- Ans
- 1. 42
 - 2. 45
 - 3. 78
 - 4. 68

Question ID : 65497834835

Status : Answered

Chosen Option : 1

Q.11 In a code language, SHOT is coded as 3881540. How will WINE be coded in that language?

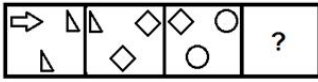
- Ans
- 1. 4615137
 - 2. 3231592
 - 3. 4610412
 - 4. 4691410

Question ID : 65497834826

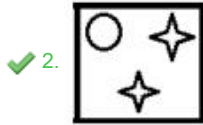
Status : Answered

Chosen Option : 4

Q.12 Select the figure from among the given options that can replace the question mark (?) in the following series.



Ans

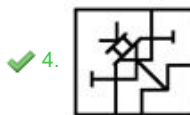
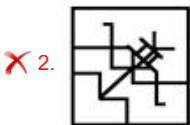
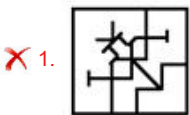


Question ID : 65497834832
 Status : Answered
 Chosen Option : 2

Q.13 Select the option in which the given figure is embedded (rotation is NOT allowed).



Ans



Question ID : 65497834837
 Status : Answered
 Chosen Option : 4

Q.14 Select the number from among the given options that can replace the question mark (?) in the following series.

5, 7, 14, 16, 32, ?

- Ans 1. 34
 2. 48
 3. 36
 4. 64

Question ID : 65497834831
 Status : Answered
 Chosen Option : 1

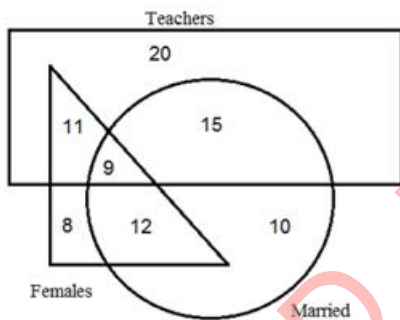
Q.15 Select the option that is related to the third word in the same way as the second word is related to the first word.

Dog : Bark :: Bird : ?

- Ans 1. Chirp
 2. Croak
 3. Bleat
 4. Growl

Question ID : 65497834822
 Status : Not Answered
 Chosen Option : --

Q.16 Study the given diagram carefully and answer the question that follows.



What is the number of female teachers who are NOT married?

- Ans 1. 8
 2. 11
 3. 12
 4. 9

Question ID : 65497834824
 Status : Answered
 Chosen Option : 2

Q.17 Select the correct option that indicates the arrangement of the given words in the order in which they appear in an English dictionary.

1. Species
2. Specify
3. Special
4. Specific
5. Speaker

- Ans
- 1. 1, 5, 3, 2, 4
 - 2. 5, 3, 1, 4, 2
 - 3. 1, 5, 3, 4, 2
 - 4. 3, 1, 5, 4, 2

Question ID : 65497834829

Status : Answered

Chosen Option : 2

Q.18 Read the given statements and conclusions carefully. Assuming that the information given in the statements is true, even if it appears to be at variance with commonly known facts, decide which of the given conclusions logically follow(s) from the statements.

Statements:

1. All cities are villages.
2. No country is a city.

Conclusions:

- I. No country is a village.
- II. No village is a city.

- Ans
- 1. Neither conclusion I nor II follows
 - 2. Only conclusion I follows
 - 3. Only conclusion II follows
 - 4. Both the conclusions follow

Question ID : 65497834817

Status : Answered

Chosen Option : 1

Q.19 Six friends, P, Q, R, S, T and U, are sitting around a circular table, facing the centre of the table. P is second to right of S. Q is sitting to the immediate left of T. P is sitting between R and U. S is sitting to the immediate left of R. Who is sitting between P and S?

- Ans
- 1. T
 - 2. R
 - 3. U
 - 4. Q

Question ID : 65497834823

Status : Answered

Chosen Option : 2

Q.20 Six members (A, B, C, D, E, and F) of a family decide to have a family photo taken, and are sitting on a bed to be photographed. B is to the right of D, A is between F and C. E is standing at one of the ends and is second to the left of A. F always wants to stand next to D. Who is third from the left in the photograph?

- Ans
- 1. C
 - 2. F
 - 3. A
 - 4. D

Question ID : 65497834833

Status : Answered

Q.21 A is the husband of B, C is the mother-in-law of B, D is the father of A, E is the mother of D, F is the mother of C and G. If H is the father of D, then what is the relation of H with E?

- Ans
- 1. Father-in-law
 - 2. Brother
 - 3. Husband
 - 4. Father

Question ID : 65497834840
Status : Answered
Chosen Option : 3

Q.22 Select the number from among the given options that can replace the question mark (?) in the following series.

20, 21, 25, 34, ?, 75

- Ans
- 1. 45
 - 2. 51
 - 3. 55
 - 4. 50

Question ID : 65497834827
Status : Answered
Chosen Option : 4

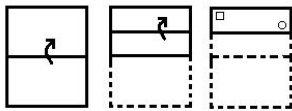
Q.23 Select the option that is related to the third number in the same way as the second number is related to the first number.

10 : 109 :: 12 : ?

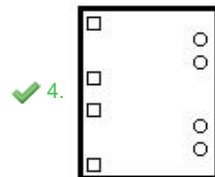
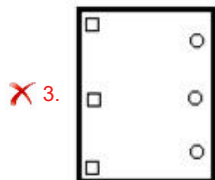
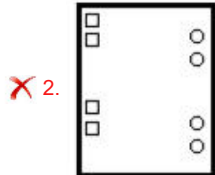
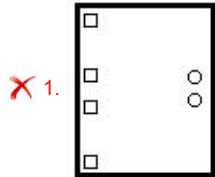
- Ans
- 1. 129
 - 2. 136
 - 3. 139
 - 4. 132

Question ID : 65497834834
Status : Answered
Chosen Option : 2

Q.24 The sequence of folding a piece of paper and the manner in which the folded paper has been cut is shown in the following figures. How would this paper look when unfolded?



Ans



Question ID : 65497834820
 Status : Answered
 Chosen Option : 4

Q.25 Select the letter-cluster from among the given options that can replace the question mark (?) in the following series.

NIR, JGN, FEJ, ?

- Ans
- ✓ 1. BCF
 - ✗ 2. DDF
 - ✗ 3. CDE
 - ✗ 4. ADE

Question ID : 65497834821
 Status : Answered
 Chosen Option : 1

Section : Part B General Knowledge and General Awareness

Q.1 Which of the following dance forms is NOT a classical dance form?

- Ans
- ✗ 1. Kuchipudi
 - ✗ 2. Odissi
 - ✓ 3. Bhrakatha
 - ✗ 4. Manipuri

Question ID : 65497834854
 Status : Answered

Q.2 What is the shallowest part of an ocean showing an average gradient of 1° or even less called?

- Ans
- 1. Continental slope
 - 2. Deep sea plain
 - 3. Continental shelf
 - 4. Oceanic trench

Question ID : 65497834841
 Status : Answered
 Chosen Option : 3

Q.3 Where did table tennis originate from?

- Ans
- 1. China
 - 2. England
 - 3. India
 - 4. Japan

Question ID : 65497834847
 Status : Answered
 Chosen Option : 4

Q.4 How much water carried by the Indus river system can India use under the Indus water treaty (1960)?

- Ans
- 1. 20%
 - 2. 15%
 - 3. 10%
 - 4. 25%

Question ID : 65497834853
 Status : Answered
 Chosen Option : 1

Q.5 Which of the following states hosts the annual Surajkund crafts fair?

- Ans
- 1. Uttar Pradesh
 - 2. Himachal Pradesh
 - 3. Haryana
 - 4. Uttarakhand

Question ID : 65497834857
 Status : Answered
 Chosen Option : 2

Q.6 Who among the following won the 'Gulbenkian Prize for Humanity' in 2020?

- Ans
- 1. Imran Khan
 - 2. Narendra Modi
 - 3. S Hussain Zaidi
 - 4. Greta Thunberg

Question ID : 65497834850
 Status : Answered
 Chosen Option : 2

Q.7 Having opened its Twitter account in _____, the Reserve Bank of India had more than 1 million followers on its official Twitter handle by November 2020.

- Ans
- 1. July 2016
 - 2. April 2014
 - 3. October 2018
 - 4. January 2012

Question ID : 65497834865
 Status : Answered
 Chosen Option : 4

Q.8 In August 2020, two coastal villages of which of the following states were declared 'Tsunami Ready' by the Intergovernmental Oceanographic Commission of UNESCO for their overall preparedness to face the calamity?

- Ans
- 1. Kerala
 - 2. Karnataka
 - 3. Gujarat
 - 4. Odisha

Question ID : 65497834846
 Status : Answered
 Chosen Option : 2

Q.9 What is NOT true about the livestock sector as per the Economic Survey of India 2020?

- Ans
- 1. Livestock sector has been growing at a Compound Annual Growth Rate (CAGR) of 7.9 per cent during last five years.
 - 2. Livestock has a potential to replace the agricultural sector.
 - 3. Livestock income has become an important secondary source of income for millions of rural families.
 - 4. It has assumed an important role in achieving the goal of doubling farmer's income.

Question ID : 65497834842
 Status : Answered
 Chosen Option : 1

Q.10 Who among the following was the court poet of Alauddin Khilji who wrote the famous poem 'Hasht-Bihisht'?

- Ans
- 1. Amir Khusrau
 - 2. Chand Bardai
 - 3. Agha Hasan Amanat
 - 4. Harisena

Question ID : 65497834843
 Status : Answered
 Chosen Option : 1

Q.11 Which among the following methods do most Indian households use for obtaining safe drinking water?

- Ans
- 1. Freezing
 - 2. Storing
 - 3. Recycling
 - 4. Boiling

Question ID : 65497834858
 Status : Answered
 Chosen Option : 3

Q.12 In which of the following oceans is Torres Strait located?

- Ans
- 1. Indian Ocean
 - 2. Arctic Ocean
 - 3. Atlantic Ocean
 - 4. Pacific Ocean

Question ID : 65497834849
Status : Answered
Chosen Option : 1

Q.13 Which of the following Indian sport shooters won the gold medal in the 10 metre air pistol event in 2019?

- Ans
- 1. Saurabh Chaudhary
 - 2. Apurvi Chandela
 - 3. Anjali Bhagwat
 - 4. Heena Sidhu

Question ID : 65497834855
Status : Answered
Chosen Option : 4

Q.14 Who among the following is the ex-officio chairperson of the National Disaster Management Authority?

- Ans
- 1. President
 - 2. Home Minister
 - 3. Prime Minister
 - 4. Vice President

Question ID : 65497834845
Status : Answered
Chosen Option : 3

Q.15 To whom was the 'I-League' trophy handed in 2019-20?

- Ans
- 1. United Sikkim
 - 2. East Bengal
 - 3. Mohun Bagan
 - 4. Dempo Goa

Question ID : 65497834851
Status : Answered
Chosen Option : 4

Q.16 When carbon dioxide is increased in the atmosphere, it leads to _____.

- Ans
- 1. global warming
 - 2. air pressure
 - 3. conservation
 - 4. rains

Question ID : 65497834859
Status : Answered
Chosen Option : 1

Q.17 What is the other name for Riboflavin?

- Ans 1. Vitamin B2
 2. Vitamin A
 3. Vitamin D
 4. Vitamin C

Question ID : 65497834852
Status : Answered
Chosen Option : 3

Q.18 Gandhiji organised a satyagraha among cotton mill workers at Ahmedabad in the year _____.

- Ans 1. 1921
 2. 1918
 3. 1929
 4. 1915

Question ID : 65497834862
Status : Answered
Chosen Option : 1

Q.19 The Taj Mahal is located in the city of Agra on the banks of the river _____.

- Ans 1. Chambal
 2. Ganga
 3. Yamuna
 4. Ghaghara

Question ID : 65497834848
Status : Answered
Chosen Option : 3

Q.20 According to the World Bank's Logistics Performance Index, among other countries India ranked _____ in 2018, up from the 54th rank in 2014.

- Ans 1. 44th
 2. 42nd
 3. 40th
 4. 52nd

Question ID : 65497834844
Status : Answered
Chosen Option : 2

Q.21 Prime Minister of India Narendra Modi and Prime Minister of Bhutan Lotay Tshering virtually launched _____ to allow Bhutanese cardholders to access RuPay network in India.

- Ans 1. RuPay International Card
 2. One Nation One Card
 3. RuPay card Phase I
 4. RuPay card Phase II

Question ID : 65497834856
Status : Answered
Chosen Option : 4

Q.22 Article _____ of the Constitution of India lays down that the State shall endeavour to secure for the citizens a uniform civil code throughout the territory of India.

- Ans 1. 44
 2. 49
 3. 42
 4. 40

Question ID : 65497834864
 Status : Answered
 Chosen Option : 2

Q.23 Who is the author of the book 'An Era of Darkness: The British Empire in India'?

- Ans 1. Shashi Tharoor
 2. Mira Nair
 3. Arun Jaitley
 4. Chetan Bhagat

Question ID : 65497834860
 Status : Answered
 Chosen Option : 2

Q.24 Which of the following agreements between India and Pakistan is also known as the 'Nehru-Liaquat Agreement'?

- Ans 1. Agreement between India and Pakistan regarding resumption of rail traffic
 2. Agreement between India and Pakistan regarding security and rights of minorities
 3. Agreement between India and Pakistan relating to air services
 4. Agreement for avoidance of double taxation between India and Pakistan

Question ID : 65497834863
 Status : Answered
 Chosen Option : 2

Q.25 The value of all final goods and services produced within a country is called the:

- Ans 1. GDP
 2. VAT
 3. IMR
 4. GST

Question ID : 65497834861
 Status : Answered
 Chosen Option : 1

Section : Part C Elementary Mathematics

Q.1 A man travelled a distance of 47 km in 6 hours. He travelled partly on foot at a speed of $6\frac{1}{2}$ km/h and the rest on bicycle at a speed of $8\frac{1}{2}$ km/h. The distance travelled (in km) on bicycle is:

- Ans 1. 17
 2. 13
 3. 30
 4. 34

Question ID : 65497834872
 Status : Not Answered
 Chosen Option : --

Q.2 The simple interest on a certain sum of money at the rate of 7.5% p.a. for 8 years is ₹4,080. At what rate of interest can the same amount of interest be received on the same sum for 5 years?

- Ans**
- 1. 10.5%
 - 2. 12%
 - 3. 11%
 - 4. 9%

Question ID : 65497834874
Status : Answered
Chosen Option : 2

Q.3 A sum was put at simple interest at a certain rate for 2 years. If it had been put at 4% higher rate, it would have fetched ₹480 more. Find the sum.

- Ans**
- 1. ₹6,000
 - 2. ₹5,000
 - 3. ₹6,500
 - 4. ₹5,900

Question ID : 65497834884
Status : Answered
Chosen Option : 1

Q.4 The value of 2 of $5 - \frac{1}{2} - \left[4 \div 2 - \frac{1}{3} - \left\{ \frac{3}{4} - \left(5 - \frac{1}{2} - \frac{3}{4} \right) \right\} \right]$ is:

- Ans**
- 1. $\frac{1}{6}$
 - 2. $\frac{10}{3}$
 - 3. $\frac{7}{6}$
 - 4. $\frac{13}{2}$

Question ID : 65497834879
Status : Answered
Chosen Option : 2

Q.5 The value of $\{5 - 5 \div (10 - 12) \times 8 + 9\} \times 3 + 5 + 5 \times 5 \div 5$ of 5 is:

- Ans**
- 1. 57
 - 2. 114
 - 3. 102
 - 4. 108

Question ID : 65497834888
Status : Not Answered
Chosen Option : --

Q.6 A can complete 40% of a work in 6 days and B can complete $33\frac{1}{3}\%$ of the same work in 8 days. They work together for 8 days. C alone completes the remaining work in 4 days. A and C together will complete the same work in:

- Ans**
- 1. $13\frac{1}{8}$ days
 - 2. 12 days
 - 3. 9 days
 - 4. 10 days

Question ID : 65497834890
Status : Answered
Chosen Option : 4

Q.7 The length, breadth and height of a solid cuboidal box are in the ratio 7 : 5 : 3 and its total surface area is 11502 cm^2 . Its breadth is:

- Ans**
- 1. 27 cm
 - 2. 56 cm
 - 3. 81 cm
 - 4. 45 cm

Question ID : 65497834876
Status : Answered
Chosen Option : 4

Q.8 The average age of 26 students in a class is 15 years. If teacher's age is included in it, then the average will increase by one. What is the teacher's age (in years)?

- Ans**
- 1. 38
 - 2. 40
 - 3. 42
 - 4. 33

Question ID : 65497834882
Status : Answered
Chosen Option : 3

Q.9 Find the greatest number of four digits which is divisible by 14, 30 and 42.

- Ans**
- 1. 9780
 - 2. 9880
 - 3. 9870
 - 4. 9098

Question ID : 65497834881
Status : Answered
Chosen Option : 3

Q.10 A man sold 30 articles for ₹100 and gained 20%. The number of articles he bought for ₹100 was:

- Ans
- 1. 28
 - 2. 24
 - 3. 36
 - 4. 32

Question ID : 65497834878
Status : Answered
Chosen Option : 3

Q.11 A money lender finds that due to a fall in the annual rate of interest from 10% to $8\frac{3}{4}\%$, his year's income diminishes by ₹84.50. Find his capital.

- Ans
- 1. ₹7,660
 - 2. ₹6,940
 - 3. ₹6,760
 - 4. ₹7,460

Question ID : 65497834886
Status : Answered
Chosen Option : 3

Q.12 On selling an article for ₹984, Arun loses 18%. In order to gain 15%, he must sell it for:

- Ans
- 1. ₹1,440
 - 2. ₹1,132
 - 3. ₹1,265
 - 4. ₹1,380

Question ID : 65497834889
Status : Answered
Chosen Option : 4

Q.13 Find the unknown value of 'x' in the proportion $(5x + 1) : 3 = (x + 3) : 7$

- Ans
- 1. 1/8
 - 2. 1/14
 - 3. 1/17
 - 4. 1/16

Question ID : 65497834875
Status : Answered
Chosen Option : 4

Q.14 Jagat Singh sold an article for ₹6,000 and incurred a loss. Had he sold it for ₹7,400, his profit would have been $\frac{2}{3}$ of the amount of loss that he incurred. At what price should he sell it to gain 25% profit?

- Ans**
- 1. ₹8,550
 - 2. ₹7,500
 - 3. ₹8,500
 - 4. ₹7,550

Question ID : 65497834873
Status : Answered
Chosen Option : 2

Q.15 The ratio of three numbers is 3 : 5 : 4 and the sum of their squares is 11250. Find the sum of the numbers.

- Ans**
- 1. 180
 - 2. 150
 - 3. 225
 - 4. 165

Question ID : 65497834883
Status : Answered
Chosen Option : 1

Q.16 A car is moving at a uniform speed of 35 km/h. What is the time it takes to cover 140 km?

- Ans**
- 1. 300 minutes
 - 2. 240 minutes
 - 3. 250 minutes
 - 4. 200 minutes

Question ID : 65497834880
Status : Answered
Chosen Option : 2

Q.17 Two candidates are contesting in an election. All votes are valid votes. A candidate who gets 38% of votes is rejected by 28,800 votes. The total number of votes polled is:

- Ans**
- 1. 1,15,000
 - 2. 1,50,000
 - 3. 1,32,500
 - 4. 1,20,000

Question ID : 65497834870
Status : Answered
Chosen Option : 4

Q.18 The average age of $66\frac{2}{3}\%$ of the number of children in a group is 13 years. The average age of all the children in the group is 14.5 years. What is the average age (in years) of the remaining children?

- Ans**
- 1. 16.5
 - 2. 15
 - 3. 13.5
 - 4. 17.5

Question ID : 65497834868
Status : Answered
Chosen Option : 4

Q.19 If decreasing 90 by $k\%$ gives the same result as increasing 60 by $k\%$, then $k\%$ of 120 is how much per cent of $[(k+20)\%$ of 150]?

- Ans**
- 1. 76.42
 - 2. 40
 - 3. 60
 - 4. 45

Question ID : 65497834867
Status : Answered
Chosen Option : 2

Q.20 After getting two successive discounts, Seema got a shirt at ₹153, for which the marked price was ₹200. If the second discount was 15%, the first discount was:

- Ans**
- 1. 20%
 - 2. 25%
 - 3. 10%
 - 4. 15%

Question ID : 65497834877
Status : Answered
Chosen Option : 4

Q.21 If the surface areas of two spheres are in the ratio of 4 : 25, then find the ratio of their volumes.

- Ans**
- 1. 5 : 2
 - 2. 125 : 8
 - 3. 8 : 125
 - 4. 4 : 25

Question ID : 65497834887
Status : Answered
Chosen Option : 3

Q.22 A can complete 25% of the work in 4 days, B can complete 50% of the same work in 12 days and C can complete the same work in 32 days. They started working together but C left after 4 days of the start and A left 6 days before the completion of the work. In how many days was the work completed?

- Ans**
- 1. 10 days
 - 2. 12 days
 - 3. 8 days
 - 4. 14 days

Question ID : 65497834871
Status : Answered
Chosen Option : 1

Q.23 A number is three times another number and their HCF is 8. What is the sum of the squares of the numbers?

- Ans**
- 1. 640
 - 2. 512
 - 3. 1024
 - 4. 1000

Question ID : 65497834866
Status : Answered
Chosen Option : 2

Q.24 The sum of three numbers is 118. If the ratio of the first number to the second number is 3 : 4 and that of the second number to the third number is 5 : 6. Find the third number.

- Ans**
- 1. 30
 - 2. 58
 - 3. 48
 - 4. 40

Question ID : 65497834885
Status : Answered
Chosen Option : 3

Q.25 An article was sold for ₹1,215 after giving a discount of 19%. If a discount of 17.5% is given, then for how much (in ₹) should the article be sold?

- Ans**
- 1. 1,527.30
 - 2. 1,327.50
 - 3. 1,237.50
 - 4. 1,723.50

Question ID : 65497834869
Status : Answered
Chosen Option : 3

Q.1 The following sentence has been split into four segments. Identify the segment that contains a grammatical error.

Did you forgot / to post / the letter / that I gave you?

- Ans
- 1. the letter
 - 2. to post
 - 3. Did you forgot
 - 4. that I gave you

Question ID : 65497834908
 Status : Answered
 Chosen Option : 3

Q.2 Select the INCORRECTLY spelt word.

- Ans
- 1. Glich
 - 2. Glove
 - 3. Glade
 - 4. Gleam

Question ID : 65497834904
 Status : Answered
 Chosen Option : 1

Q.3 Select the INCORRECTLY spelt word.

- Ans
- 1. Guarantee
 - 2. Discipline
 - 3. Appreciate
 - 4. Guidance

Question ID : 65497834905
 Status : Answered
 Chosen Option : 2

Q.4 Select the most appropriate option that can substitute the underlined segment in the given sentence. If there is no need to substitute it, select 'No substitution required'.

There are still some sugar in the bowl.

- Ans
- 1. is still some sugar
 - 2. are still little sugar
 - 3. No substitution required
 - 4. is still few sugar

Question ID : 65497834897
 Status : Answered
 Chosen Option : 3

Q.5 Select the option that can be used as a one-word substitute for the given group of words.

A collection of sticks

- Ans** 1. Bundle
 2. Bevy
 3. Brood
 4. Bale

Question ID : 65497834910
Status : Answered
Chosen Option : 1

Q.6 Select the most appropriate option to fill in the blank.

It is believed that physical exercise is _____ for creating a balance between the body and the mind.

- Ans** 1. essential
 2. forceful
 3. demanding
 4. increased

Question ID : 65497834906
Status : Answered
Chosen Option : 1

Q.7 Select the most appropriate ANTONYM of the given word.

Gallant

- Ans** 1. Courageous
 2. Cowardly
 3. Heroic
 4. Valiant

Question ID : 65497834902
Status : Answered
Chosen Option : 2

Q.8 Select the most appropriate option that can substitute the underlined segment in the given sentence. If there is no need to substitute it, select 'No substitution required'.

Fred and Andrew were training for the Asian games.

- Ans** 1. is training for
 2. is being training for
 3. No substitution required
 4. were being training for

Question ID : 65497834901
Status : Answered
Chosen Option : 3

Q.9 Select the most appropriate SYNONYM of the given word.

Disrupt

- Ans 1. Disturb
 2. Disgrace
 3. Disagree
 4. Discuss

Question ID : 65497834909
Status : Answered
Chosen Option : 4

Q.10 Select the most appropriate option to fill in the blank.

The novel presents a theme of betrayal in a _____ manner.

- Ans 1. harmful
 2. tableful
 3. fruitful
 4. skilful

Question ID : 65497834895
Status : Answered
Chosen Option : 1

Q.11 Select the most appropriate option that can substitute the underlined segment in the given sentence. If there is no need to substitute it, select 'No substitution required'.

It didn't dawn on me until much later that he doesn't like me.

- Ans 1. till late
 2. until late
 3. until much after
 4. No substitution required

Question ID : 65497834907
Status : Not Attempted and Marked For Review
Chosen Option : --

Q.12 Select the most appropriate meaning of the given idiom.

A cold fish

- Ans 1. An unemotional person
 2. A nervous person
 3. A boring person
 4. A sensitive person

Question ID : 65497834898
Status : Answered
Chosen Option : 1

Q.13 Select the option that can be used as a one-word substitute for the given group of words.

A system of government in which most of the important decisions are taken by state officials rather than by elected representatives.

- Ans
- 1. Aristocracy
 - 2. Monarchy
 - 3. Democracy
 - 4. Bureaucracy

Question ID : 65497834903
Status : Answered
Chosen Option : 4

Q.14 Parts of the given sentence have been given as options. One of them contains a grammatical error. Select the option that has the error.

India has produce many well-known scientists who have received accolades all over the world.

- Ans
- 1. who have received
 - 2. India has produce
 - 3. well-known scientists
 - 4. all over the world

Question ID : 65497834900
Status : Answered
Chosen Option : 2

Q.15 Select the most appropriate synonym of the given word.

Coarse

- Ans
- 1. Happy
 - 2. Kind
 - 3. Polite
 - 4. Crude

Question ID : 65497834892
Status : Answered
Chosen Option : 4

Q.16 Select the option that can be used as a one-word substitute for the given group of words.

A building where monks live as a community

- Ans
- 1. Monastery
 - 2. Villa
 - 3. Cottage
 - 4. Condo

Question ID : 65497834894
Status : Answered
Chosen Option : 1

Q.17 Select the most appropriate meaning of the given idiom.

Vanish into thin air

- Ans
- 1. Dilute entirely
 - 2. Disappear completely
 - 3. Postpone finally
 - 4. Mix permanently

Question ID : 65497834893
Status : Answered
Chosen Option : 3

Q.18 Select the most appropriate ANTONYM of the given word.

Hearty

- Ans
- 1. Aloof
 - 2. Cordial
 - 3. Warm
 - 4. Robust

Question ID : 65497834896
Status : Not Answered
Chosen Option : --

Q.19 Select the most appropriate option to fill in the blank.

_____ of money prevented me from purchasing the house.

- Ans
- 1. Short
 - 2. Less
 - 3. Limit
 - 4. Lack

Question ID : 65497834899
Status : Answered
Chosen Option : 4

Q.20 The following sentence has been divided into parts. One of them may contain an error. Select the part that contains the error from the given options. If you don't find any error, select 'No error' as your answer.

I wants / to borrow your bicycle / for a day.

- Ans
- 1. for a day
 - 2. to borrow your bicycle
 - 3. No error
 - 4. I wants

Question ID : 65497834891
Status : Answered
Chosen Option : 4

Comprehension:

In the following passage, some words have been deleted. Read the passage carefully and select the most appropriate option to fill in each blank.

Jog Falls is one of the highest waterfalls in India. It is made by Sharavati river (1)_____ through the Western Ghats. It is surrounded (2)_____ a beautiful tropical forest. During summer, there is not (3)_____ water in the river but during monsoons, (4)_____ river is swollen with water and the Falls create a (5)_____ spectacle.

SubQuestion No : 21

Q.21 Select the most appropriate option to fill in blank no.1.

- Ans 1. flowed
 2. flow
 3. flowing
 4. flows

Question ID : 65497834912
 Status : Answered
 Chosen Option : 3

Comprehension:

In the following passage, some words have been deleted. Read the passage carefully and select the most appropriate option to fill in each blank.

Jog Falls is one of the highest waterfalls in India. It is made by Sharavati river (1)_____ through the Western Ghats. It is surrounded (2)_____ a beautiful tropical forest. During summer, there is not (3)_____ water in the river but during monsoons, (4)_____ river is swollen with water and the Falls create a (5)_____ spectacle.

SubQuestion No : 22

Q.22 Select the most appropriate option to fill in blank no.2.

- Ans 1. from
 2. by
 3. with
 4. through

Question ID : 65497834913
 Status : Answered
 Chosen Option : 2

Comprehension:

In the following passage, some words have been deleted. Read the passage carefully and select the most appropriate option to fill in each blank.

Jog Falls is one of the highest waterfalls in India. It is made by Sharavati river (1)_____ through the Western Ghats. It is surrounded (2)_____ a beautiful tropical forest. During summer, there is not (3)_____ water in the river but during monsoons, (4)_____ river is swollen with water and the Falls create a (5)_____ spectacle.

SubQuestion No : 23

Q.23 Select the most appropriate option to fill in blank no.3.

- Ans 1. many
 2. most
 3. more
 4. much

Question ID : 65497834914
 Status : Answered
 Chosen Option : 4

Comprehension:

In the following passage, some words have been deleted. Read the passage carefully and select the most appropriate option to fill in each blank.

Jog Falls is one of the highest waterfalls in India. It is made by Sharavati river (1)_____ through the Western Ghats. It is surrounded (2)_____ a beautiful tropical forest. During summer, there is not (3)_____ water in the river but during monsoons, (4)_____ river is swollen with water and the Falls create a (5)_____ spectacle.

SubQuestion No : 24

Q.24 Select the most appropriate option to fill in blank no.4.

- Ans 1. one
 2. the
 3. an
 4. a

Question ID : 65497834915

Status : Answered

Chosen Option : 2

Comprehension:

In the following passage, some words have been deleted. Read the passage carefully and select the most appropriate option to fill in each blank.

Jog Falls is one of the highest waterfalls in India. It is made by Sharavati river (1)_____ through the Western Ghats. It is surrounded (2)_____ a beautiful tropical forest. During summer, there is not (3)_____ water in the river but during monsoons, (4)_____ river is swollen with water and the Falls create a (5)_____ spectacle.

SubQuestion No : 25

Q.25 Select the most appropriate option to fill in blank no.5.

- Ans 1. different
 2. peculiar
 3. amazing
 4. fantastic

Question ID : 65497834916

Status : Answered

Chosen Option : 3

Section : Part D Hindi

Q.1 'पर्वत के ऊपर की समतल भूमि' वाक्यांश के लिए एक शब्द होगा-

- Ans 1. अधित्यका
 2. गिरि
 3. उपत्यका
 4. पठार

Question ID : 65497834935

Status : Not Answered

Chosen Option : --

Q.2 दिए गए शब्द का विलोम चुनें।

मौन

- Ans
- 1. चुप
 - 2. मौलिक
 - 3. वाचाल
 - 4. शात

Question ID : 65497834927
Status : Not Answered
Chosen Option : --

Q.3 दिए गए चार विकल्पों में से, उस विकल्प का चयन करें जो नीचे दिए मुहावरे का अर्थ व्यक्त करता है।

आँखों में धूल झोकना

- Ans
- 1. धोखा देना
 - 2. ढाढ़स बधाना
 - 3. आँख फोड़ना
 - 4. आदर देना

Question ID : 65497834928
Status : Not Answered
Chosen Option : --

Q.4 दिए गए शब्द के समानार्थी शब्द का चयन करें।

कमल

- Ans
- 1. अम्बुज
 - 2. कुसुमाकर
 - 3. सैन्धव
 - 4. कल्पतरु

Question ID : 65497834926
Status : Not Answered
Chosen Option : --

Q.5 'ताप' का विलोम शब्द होगा-

- Ans
- 1. उष्ण
 - 2. पाप
 - 3. शीत
 - 4. सताप

Question ID : 65497834934
Status : Not Answered
Chosen Option : --

Q.6 दिये गये वाक्य के किस भाग में त्रुटि है?

अभी ही वह यहाँ से बाहर गया है।

- Ans
- 1. वह यहाँ
 - 2. गया है।
 - 3. अभी ही
 - 4. से बाहर

Question ID : 65497834933
Status : Not Answered
Chosen Option : --

Q.7 रिक्त स्थान को भरने के लिए सबसे उपयुक्त शब्द का चयन करें।

मेरे पिताजी ने यह _____ लिखी है।

- Ans
- 1. नाटक
 - 2. कहानी
 - 3. उपन्यास
 - 4. सस्करण

Question ID : 65497834919
Status : Not Answered
Chosen Option : --

Q.8 दिए गए वाक्य में रेखांकित खंड को प्रतिस्थापित करने के लिए सबसे उपयुक्त विकल्प का चयन करें।
यदि इसे प्रतिस्थापित करने की आवश्यकता नहीं है, तो विकल्प 'किसी बदलाव की आवश्यकता नहीं है'
का चयन करें।

सतुष्ट होने के कारण उसने कभी शिकायत नहीं की।

- Ans
- 1. उसने कभी शिकायत नहीं करा।
 - 2. उसने कभी शिकायत नहीं किये।
 - 3. उसने कभी शिकायतें नहीं किये।
 - 4. किसी बदलाव की आवश्यकता नहीं है।

Question ID : 65497834936
Status : Not Answered
Chosen Option : --

Q.9 दिए गए वाक्य का वो भाग ज्ञात करें जिसमें कोई त्रुटि है। यदि कोई त्रुटि नहीं है, तो 'कोई त्रुटि नहीं है'
चुनें।

बिल के भुगतान (1)\ न करने पर तुम्हें (2)\ माल वापस करना होगा। (3)\ कोई त्रुटि नहीं है (4)

- Ans
- 1. 1
 - 2. 3
 - 3. 2
 - 4. 4

Question ID : 65497834922
Status : Not Answered
Chosen Option : --

Q.10 नीचे दिए वाक्यांश के लिए एक शब्द दिए गए विकल्पों में से चुनिए।

जिसका अपकार किया गया हो।

- Ans
- 1. उपकार
 - 2. अपकृत
 - 3. अपकार
 - 4. उपकृत

Question ID : 65497834929
Status : Not Answered
Chosen Option : --

Q.11 निम्नलिखित प्रश्न में, दिए गए चार विकल्पों में से, उस विकल्प का चयन करें जो मुहावरे का अर्थ व्यक्त करता है।

देवता कूच कर जाना

- Ans
- 1. दूर चले जाना
 - 2. घबरा जाना
 - 3. दुर्गति होना
 - 4. होश में न रहना

Question ID : 65497834924
Status : Not Answered
Chosen Option : --

Q.12 सही वर्तनी वाले शब्द का चयन करें।

- Ans
- 1. पूजनीय
 - 2. पुज्यनिय
 - 3. पुजनीय
 - 4. पूज्यनीय

Question ID : 65497834930
Status : Not Answered
Chosen Option : --

Q.13 दिए गए वाक्य में रेखांकित खंड को प्रतिस्थापित करने के लिए सबसे उपयुक्त विकल्प का चयन करें। यदि इसे प्रतिस्थापित करने की आवश्यकता नहीं है, तो विकल्प 'किसी बदलाव की आवश्यकता नहीं है' का चयन करें।

उसका दुर्भाग्य था और इसलिए वह परीक्षा में बैठ न सके।

- Ans
- 1. इसलिए वह परीक्षा में बैठ न सका।
 - 2. इसलिए वह परीक्षा में बैठे न सका।
 - 3. इसलिए वह परीक्षाओं में बैठ न सके।
 - 4. किसी बदलाव की आवश्यकता नहीं है।

Question ID : 65497834921
Status : Not Answered
Chosen Option : --

Q.14 सही वर्तनी वाले शब्द का चयन करें।

- Ans 1. सौहार्द
 2. सौहार्द्र
 3. सोहाद्र
 4. सैहार्द

Question ID : 65497834931
 Status : Not Answered
 Chosen Option : --

Q.15 दिए गए वाक्य का वह भाग ज्ञात करें जिसमें कोई त्रुटि है। यदि कोई त्रुटि नहीं है, तो 'कोई त्रुटि नहीं है' चुनें।

पिताजी को (1)/ मुझे कुछ (2)/ रुपये दिये (3)/ कोई त्रुटि नहीं है (4)

- Ans 1. 3
 2. 4
 3. 2
 4. 1

Question ID : 65497834925
 Status : Not Answered
 Chosen Option : --

Q.16 रिक्त स्थान को भरने के लिए सबसे उपयुक्त शब्द का चयन कीजिए।

नई वस्तु की खोज को _____ कहते हैं।

- Ans 1. गवेषणा
 2. सशोधन
 3. खोज
 4. आविष्कार

Question ID : 65497834918
 Status : Not Answered
 Chosen Option : --

Q.17 इस वाक्यांश के लिए एक सार्थक शब्द दीजिए।

किसी पर विजय पाने की इच्छा रखने वाला

- Ans 1. जिज्ञासा
 2. जिगीषु
 3. जिजीविषा
 4. जिगीषा

Question ID : 65497834917
 Status : Not Answered
 Chosen Option : --

Q.18 दिए गए वाक्य में रेखांकित खंड को प्रतिस्थापित करने के लिए सबसे उपयुक्त विकल्प का चयन करें। यदि इसे प्रतिस्थापित करने की आवश्यकता नहीं है, तो विकल्प 'किसी बदलाव की आवश्यकता नहीं है' का चयन करें।

रावण वध के दिन अनेक लोग ने रामलीला देखी।

- Ans
- 1. अनेक लोगो ने रामलीला देखें।
 - 2. अनेक लोगो ने रामलीला देखी।
 - 3. अनेक लोग ने रामलीला देखा।
 - 4. किसी बदलाव की आवश्यकता नहीं है।

Question ID : 65497834920

Status : Not Answered

Chosen Option : --

Q.19 दिए गए शब्द के समानार्थी शब्द का चयन करें।

पुष्प

- Ans
- 1. जलजात
 - 2. परिमल
 - 3. प्रसून
 - 4. पल्लव

Question ID : 65497834923

Status : Not Answered

Chosen Option : --

Q.20 रिक्त स्थान को भरने के लिए सबसे उपयुक्त शब्द का चयन करें।

मैंने अपने भाई को _____ भेजा कि रविवार को हमसे मिलने आना।

- Ans
- 1. सवाद
 - 2. सदेश
 - 3. समाचार
 - 4. सूचना

Question ID : 65497834932

Status : Not Answered

Chosen Option : --

Comprehension:

श्रद्धा का मूल तत्व है- दूसरे का महत्व स्वीकार। अतः जिसकी (1) _____ दृष्टि अपने से आगे नहीं जा सकती अथवा (2) _____ के कारण जिन्हें अपनी ही बड़ाई के अनुभव की लत लग गई है उनकी इतनी समाई नहीं कि वे श्रद्धा ऐसे पवित्र भाव को (3) _____ करें। स्वार्थियो और अभिमानियो के (4) _____ में श्रद्धा नहीं टिक सकती। उनका अतःकरण सकुचित और (5) _____ होता है कि वह दूसरो के कृति का यथार्थ मूल्य नहीं परख सकते।

निम्न प्रश्नो के उत्तर उपरोक्त गद्यांश के आधार पर दीजिए।

SubQuestion No : 21

Q.21 गद्यांश के रिक्त स्थान (1) के लिए सर्वाधिक उपयुक्त शब्द होगा-

- Ans
- 1. परमार्थबद्ध
 - 2. मुक्त
 - 3. स्वार्थबद्ध
 - 4. विस्तृत

Question ID : 65497834938

Status : Not Answered

Chosen Option : --

Comprehension:

श्रद्धा का मूल तत्व है- दूसरे का महत्व स्वीकार। अतः जिसकी (1) _____ दृष्टि अपने से आगे नहीं जा सकती अथवा (2) _____ के कारण जिन्हें अपनी ही बड़ाई के अनुभव की लत लग गई है उनकी इतनी समाई नहीं कि वे श्रद्धा ऐसे पवित्र भाव को (3) _____ करें। स्वार्थियो और अभिमानियो के (4) _____ में श्रद्धा नहीं टिक सकती। उनका अतःकरण सकुचित और (5) _____ होता है कि वह दूसरो के कृति का यथार्थ मूल्य नहीं परख सकते।

निम्न प्रश्नो के उत्तर उपरोक्त गद्यांश के आधार पर दीजिए।

SubQuestion No : 22

Q.22 गद्यांश के रिक्त स्थान (2) के लिए सर्वाधिक उपयुक्त शब्द होगा-

- Ans
- 1. बलिदान
 - 2. सम्मान
 - 3. अपमान
 - 4. अभिमान

Question ID : 65497834939

Status : Not Answered

Chosen Option : --

Comprehension:

श्रद्धा का मूल तत्व है- दूसरे का महत्व स्वीकार। अतः जिसकी (1) _____ दृष्टि अपने से आगे नहीं जा सकती अथवा (2) _____ के कारण जिन्हें अपनी ही बड़ाई के अनुभव की लत लग गई है उनकी इतनी समाई नहीं कि वे श्रद्धा ऐसे पवित्र भाव को (3) _____ करें। स्वार्थियो और अभिमानियो के (4) _____ में श्रद्धा नहीं टिक सकती। उनका अतःकरण सकुचित और (5) _____ होता है कि वह दूसरो के कृति का यथार्थ मूल्य नहीं परख सकते।

निम्न प्रश्नो के उत्तर उपरोक्त गद्यांश के आधार पर दीजिए।

SubQuestion No : 23

Q.23 गद्यांश के रिक्त स्थान (3) के लिए सर्वाधिक उपयुक्त शब्द होगा-

- Ans
- 1. धारण
 - 2. चारण
 - 3. अनुकरण
 - 4. अनुसरण

Question ID : 65497834940

Status : Not Answered

Chosen Option : --

Comprehension:

श्रद्धा का मूल तत्व है- दूसरे का महत्व स्वीकार। अतः जिसकी (1) _____ दृष्टि अपने से आगे नहीं जा सकती अथवा (2) _____ के कारण जिन्हें अपनी ही बड़ाई के अनुभव की लत लग गई है उनकी इतनी समाई नहीं कि वे श्रद्धा ऐसे पवित्र भाव को (3) _____ करें। स्वार्थियो और अभिमानियो के (4) _____ में श्रद्धा नहीं टिक सकती। उनका अतःकरण सकुचित और (5) _____ होता है कि वह दूसरो के कृति का यथार्थ मूल्य नहीं परख सकते।

निम्न प्रश्नो के उत्तर उपरोक्त गद्यांश के आधार पर दीजिए।

SubQuestion No : 24

Q.24 गद्यांश के रिक्त स्थान (4) के लिए सर्वाधिक उपयुक्त शब्द होगा-

- Ans
- 1. बुद्धि
 - 2. शरीर
 - 3. हृदय
 - 4. मस्तिष्क

Question ID : 65497834941

Status : Not Answered

Chosen Option : --

Comprehension:

श्रद्धा का मूल तत्व है- दूसरे का महत्व स्वीकार। अतः जिसकी (1) _____ दृष्टि अपने से आगे नहीं जा सकती अथवा (2) _____ के कारण जिन्हें अपनी ही बड़ाई के अनुभव की लत लग गई है उनकी इतनी समाई नहीं कि वे श्रद्धा ऐसे पवित्र भाव को (3) _____ करें। स्वार्थियो और अभिमानियो के (4) _____ में श्रद्धा नहीं टिक सकती। उनका अतःकरण सकुचित और (5) _____ होता है कि वह दूसरो के कृति का यथार्थ मूल्य नहीं परख सकते।

निम्न प्रश्नो के उत्तर उपरोक्त गद्यांश के आधार पर दीजिए।

SubQuestion No : 25

Q.25 गद्यांश के रिक्त स्थान (5) के लिए सर्वाधिक उपयुक्त शब्द होगा-

- Ans
- 1. विस्तृत
 - 2. पवित्र
 - 3. धवल
 - 4. मलिन

Question ID : 65497834942

Status : Not Answered

Chosen Option : --

KD Job Updates

Exam Date	24/11/2021
Exam Time :	12:30 PM - 2:00 PM
Subject	Constable GD 2021

Section : Part A General Intelligence and Reasoning

Q.1 Mira is the wife of Ketan. Chaitanya is the brother of Kapila, who is the wife of Sudeep. Rani is the mother of Ketan and the wife of Surendra. Chaitanya is the son of Rani. How is Surendra related to Sudeep?

- Ans
- 1. Son
 - 2. Brother
 - 3. Father
 - 4. Father-in-law

Question ID : 65497834194
 Status : Answered
 Chosen Option : 4

Q.2 Read the given statements and conclusions carefully. Assuming that the information given in the statements is true, even if it appears to be at variance with commonly known facts, decide which of the given conclusions logically follow(s) from the statements.

Statements:

1. Some medicines are injections.
2. No injection is an equipment.

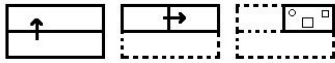
Conclusions:

- I. No equipment is an injection.
- II. No medicine is an equipment.

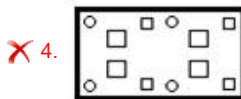
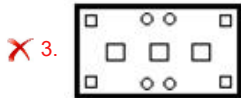
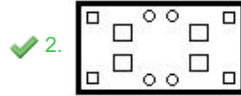
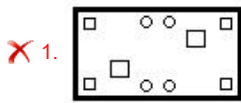
- Ans
- 1. Only conclusion II follows
 - 2. Only conclusion I follows
 - 3. None of the conclusions follow
 - 4. Both the conclusions follow

Question ID : 65497834186
 Status : Answered
 Chosen Option : 2

Q.3 The sequence of folding a piece of paper and the manner in which the folded paper has been cut is shown in the following figures. How would this paper look when unfolded?

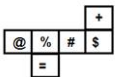


Ans




Question ID : 65497834189
 Status : Answered
 Chosen Option : 2

Q.4 A cube is made by folding the given sheet. In the cube so formed, what would be the symbol on the opposite side of the symbol '+'?



Ans



Question ID : 65497834204
 Status : Answered
 Chosen Option : 3

Q.5 Select the number from among the given options that can replace the question mark (?) in the following series.

1, 2, 2, 4, 8, 32, ?

Ans



Question ID : 65497834199
 Status : Answered
 Chosen Option : 4

Q.6 Select the number from among the given options that can replace the question mark (?) in the following series.

40, 76, 44, 70, 49, 64, 55, 58, ?

Ans 1. 62

2. 80

3. 65

4. 71

Question ID : 65497834195

Status : Answered

Chosen Option : 1

Q.7 Select the letter from among the given options that can replace the question mark (?) in the following series.

G, K, O, S, W, A, ?

Ans 1. J

2. E

3. G

4. C

Question ID : 65497834181

Status : Answered

Chosen Option : 2

Q.8 In a certain code language, 'LEJ' is written as 'XJT' and 'FAME' is written as 'LBZJ'. How will 'CABLE' be written in that language?

Ans 1. HBDZJ

2. FBDXJ

3. DBCXF

4. XZYOJ

Question ID : 65497834192

Status : Answered

Chosen Option : 2

Q.9 Six persons, P, Q, R, S, T and U, are watching a movie sitting in a line, all facing the north. S is sitting between P and Q. T is at second place to the left of P. R is third to the left of Q. Q is sitting at one of the corners. Who is sitting at the other corner?

Ans 1. S

2. R

3. T

4. U

Question ID : 65497834183

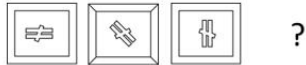
Status : Answered

Chosen Option : 4

Q.10 'Majority' is related to 'Minority' in the same way as 'Natural' is related to '_____'.
 Ans 1. Nature
 2. Fragrance
 3. Artificial
 4. Environment

Question ID : 65497834182
 Status : Answered
 Chosen Option : 3

Q.11 Select the figure from among the given options that can replace the question mark (?) in the following series.



- Ans
- 1.
 - 2.
 - 3.
 - 4.

Question ID : 65497834200
 Status : Answered
 Chosen Option : 3

Q.12 Select the option in which the numbers are related in the same way as are the numbers in the given set.

(9, 79, 7)

- Ans 1. (15, 239, 14)
 2. (24, 635, 25)
 3. (20, 800, 40)
 4. (12, 135, 18)

Question ID : 65497834187
 Status : Answered
 Chosen Option : 4

Q.13 Which two signs should be interchanged to make the given equation correct?

$$12 - 14 \times 21 \div 7 + 28 = 193$$

- Ans 1. \times and $-$
 2. $+$ and \times
 3. $+$ and \div
 4. \times and \div

Question ID : 65497834203
 Status : Answered

Q.14 Select the combination of letters that when sequentially placed in the blanks of the given series will complete the series.

L _ _ R _ T _ M P _ S _ _ M P _ S T

- Ans 1. M, P, S, L, R, T, L, R
 2. L, R, T, S, P, P, S, T
 3. L, M, R, S, L, M, P, R
 4. R, P, L, M, S, L, S, T

Question ID : 65497834198
 Status : Answered
 Chosen Option : 1

Q.15 Select the option that is related to the fourth number in the same way as the first number is related to the second number and the fifth number is related to the sixth number.

345 : 7 :: ? : 9 :: 66 : 4

- Ans 1. 514
 2. 731
 3. 445
 4. 651

Question ID : 65497834202
 Status : Answered
 Chosen Option : 2

Q.16 Select the correct mirror image of the given combination when the mirror is placed at the right side.

G N 2 1 q K

- Ans 1. K p 1 2 1 G N
 2. K p 1 2 1 G N
 3. K p 1 2 1 G N
 4. K p 1 2 1 G N

Question ID : 65497834196
 Status : Answered
 Chosen Option : 4

Q.17 Four letter-clusters have been given, out of which three are alike in some manner and one is different. Select the letter-cluster that is different.

- Ans 1. HLM
 2. KOP
 3. PRT
 4. DHI

Question ID : 65497834190
 Status : Answered
 Chosen Option : 3

Q.18 P, Q, R, S, T, U, V and W are sitting anticlockwise around a circular table in the same sequence at equal distances between them. All are facing the centre of the table. S is facing the south. Then V and Q interchange their positions. In which direction is Q sitting now?

- Ans
- 1. South-east
 - 2. North-east
 - 3. South-west
 - 4. North

Question ID : 65497834201
Status : Answered
Chosen Option : 2

Q.19 An amount of ₹1,189 is to be divided among Rakesh, Mrinal and Sanjay in the ratio of 11 : 13 : 17, respectively. How much amount will Sanjay get more than Rakesh?

- Ans
- 1. ₹160
 - 2. ₹222
 - 3. ₹194
 - 4. ₹174

Question ID : 65497834188
Status : Answered
Chosen Option : 4

Q.20 In a certain code language, 'SOIL' is coded as '38301824'. How will 'DECIMAL' be coded in that language?

- Ans
- 1. 81061826224
 - 2. 41060928224
 - 3. 85161626224
 - 4. 81062028226

Question ID : 65497834193
Status : Answered
Chosen Option : 1

Q.21 Select the option that is related to the third term in the same way as the second term is related to the first term.

ORATOR : RQDSRQ :: TACKLE : ?

- Ans
- 1. WYFMOG
 - 2. WZFJOD
 - 3. VYFJPQ
 - 4. WZFLOF

Question ID : 65497834191
Status : Answered
Chosen Option : 2

Q.22 In a certain code language, 'MANGOES' is written as 'AEGMNOS'. How will 'FRIEND' be written in that language?

- Ans
- 1. DEFINR
 - 2. RDHFNI
 - 3. RFEIDN
 - 4. UIRVMW

Question ID : 65497834185
 Status : Answered
 Chosen Option : 1

Q.23 Select the option in which the given figure is embedded (rotation is NOT allowed).



Ans

- 1.
- 2.
- 3.
- 4.

KD Job Updates

Question ID : 65497834205
 Status : Answered
 Chosen Option : 2

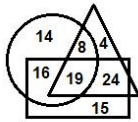
Q.24 Select the correct option that indicates the arrangement of the given words in the order in which they appear in an English dictionary.

1. Pegmatites
2. Persistence
3. Peroration
4. Percodan
5. Perfection

- Ans
- 1. 1, 3, 2, 4, 5
 - 2. 1, 4, 5, 2, 3
 - 3. 1, 4, 5, 3, 2
 - 4. 1, 3, 4, 5, 2

Question ID : 65497834197
 Status : Answered
 Chosen Option : 3

Q.25 In the following diagram, the circle stands for 'teachers', the rectangle stands for 'part-time workers', and the triangle stands for 'online educators'. The numbers given in the different segments represent the number of persons of that category.



How many teachers are online educators and also part-time workers?

- Ans
- 1. 24
 - 2. 19
 - 3. 15
 - 4. 16

Question ID : 65497834184
 Status : Answered
 Chosen Option : 2

Section : Part B General Knowledge and General Awareness

Q.1 A 'duopoly' is a type of oligopoly wherein _____ firms have dominant or exclusive control over a market.

- Ans
- 1. two
 - 2. five
 - 3. four
 - 4. three

Question ID : 65497834223
 Status : Answered
 Chosen Option : 1

Q.2 Who among the following had laid the foundation of Lodi dynasty?

- Ans
- 1. Ibrahim Lodi
 - 2. Bahlul Lodi
 - 3. Sikandar Lodi
 - 4. Jalaluddin Lodi

Question ID : 65497834215
 Status : Answered
 Chosen Option : 3

Q.3 Which team became the first IPL team to win the IPL title for the fifth time in 2020?

- Ans
- 1. Delhi Capitals
 - 2. Chennai Super Kings
 - 3. Royal Challengers Bangalore
 - 4. Mumbai Indians

Question ID : 65497834208
 Status : Answered
 Chosen Option : 4

Q.4 According to Census 2011, which is the least populous state in India?

- Ans 1. Arunachal Pradesh
 2. Sikkim
 3. Mizoram
 4. Goa

Question ID : 65497834213
Status : Answered
Chosen Option : 2

Q.5 Which of the following statements is CORRECT?

- Ans 1. The sun is an example of an illuminated object.
 2. A frying pan is an example of an opaque object.
 3. A wooden box is an example of a luminous object.
 4. An empty bottle made of clear glass is an example of a translucent object.

Question ID : 65497834228
Status : Answered
Chosen Option : 4

Q.6 Which neighbouring country and India's boundary was ratified by The Constitution (100th Amendment) Act, 2015?

- Ans 1. Bhutan
 2. Myanmar
 3. Bangladesh
 4. Nepal

Question ID : 65497834207
Status : Answered
Chosen Option : 2

Q.7 Which clause allows the government to breach its fiscal deficit target by 0.5% points at times of severe stress in the economy?

- Ans 1. FAR clause
 2. Guarantee clause
 3. DEAR clause
 4. Escape clause

Question ID : 65497834210
Status : Answered
Chosen Option : 4

Q.8 Annie Zaidi was awarded the Nine Dots Prize for the year _____.

- Ans 1. 2020-21
 2. 2021-22
 3. 2019-20
 4. 2018-19

Question ID : 65497834230
Status : Not Answered
Chosen Option : --

Q.9 Which of the following states is the 'Vinchhudo' dance primarily associated with?

- Ans
- 1. Nagaland
 - 2. Madhya Pradesh
 - 3. Gujarat
 - 4. Goa

Question ID : 65497834227
Status : Not Answered
Chosen Option : --

Q.10 The natural tendency of objects to resist a change in their state of rest or of uniform motion is known as _____.

- Ans
- 1. momentum
 - 2. acceleration
 - 3. force
 - 4. inertia

Question ID : 65497834224
Status : Answered
Chosen Option : 4

Q.11 When government is lowering taxes and raising government spending, which kind of fiscal policy is it following?

- Ans
- 1. Neutral Fiscal Policy
 - 2. Contractional Fiscal Policy
 - 3. Both, Contractional Fiscal Policy and Expansionary Fiscal Policy
 - 4. Expansionary Fiscal Policy

Question ID : 65497834206
Status : Answered
Chosen Option : 2

Q.12 Kamala Harris, the first female Vice-President of the US, has family roots in the Indian state of:

- Ans
- 1. Karnataka
 - 2. Kerala
 - 3. Andhra Pradesh
 - 4. Tamil Nadu

Question ID : 65497834219
Status : Answered
Chosen Option : 1

Q.13 In which Indian city is one of the country's ancient lakes, the 'Lendiya Talab' located?

- Ans
- 1. Chennai
 - 2. Bhopal
 - 3. Lucknow
 - 4. Varanasi

Question ID : 65497834209
Status : Not Answered
Chosen Option : --

Q.14 Who among the following players won the Women's Singles event at the French Open 2020?

- Ans
- 1. Katie Boulter
 - 2. Elina Svitolina
 - 3. Iga Swiatek
 - 4. Sofia Kenin

Question ID : 65497834222
 Status : Answered
 Chosen Option : 3

Q.15 Which of the following conspiracies was linked to the train robbery in 1925?

- Ans
- 1. Kakori Conspiracy
 - 2. Delhi Conspiracy
 - 3. Peshawar Conspiracy
 - 4. Muzaffarpur Conspiracy

Question ID : 65497834225
 Status : Answered
 Chosen Option : 1

Q.16 The Fundamental Principles of the Olympic Charter are based on a document written by:

- Ans
- 1. Leo Tolstoy
 - 2. Aristotle
 - 3. Muhammad Ali
 - 4. Pierre de Coubertin

Question ID : 65497834218
 Status : Answered
 Chosen Option : 4

Q.17 Deepa Malik is India's first female para-athlete to win a medal at the _____ Rio Paralympics.

- Ans
- 1. 2014
 - 2. 2018
 - 3. 2016
 - 4. 2015

Question ID : 65497834220
 Status : Answered
 Chosen Option : 3

Q.18 In which year did Subhash Chandra Bose escape from under British surveillance?

- Ans
- 1. 1941
 - 2. 1939
 - 3. 1932
 - 4. 1945

Question ID : 65497834211
 Status : Answered
 Chosen Option : 1

Q.19 Which is the first month of the Indian national calendar year beginning on 22 March, which is the day after the spring equinox?

- Ans
- 1. Ashwin
 - 2. Kartika
 - 3. Phalguna
 - 4. Chaitra

Question ID : 65497834212
Status : Answered
Chosen Option : 1

Q.20 Which of the following is a chemical element with the atomic number 10?

- Ans
- 1. Helium
 - 2. Neon
 - 3. Lithium
 - 4. Carbon

Question ID : 65497834229
Status : Answered
Chosen Option : 2

Q.21 With reference to the ancient history of India, which of the following sites is associated with the Ashoka Pillar?

- Ans
- 1. Sanchi
 - 2. Khajuraho
 - 3. Chatru
 - 4. Mandu

Question ID : 65497834214
Status : Not Answered
Chosen Option : --

Q.22 Rechna Doab is located between:

- Ans
- 1. Ganga and Ghaghara rivers
 - 2. Ravi and Chenab rivers
 - 3. Beas and Sutlej rivers
 - 4. Indus and Jhelum rivers

Question ID : 65497834221
Status : Not Answered
Chosen Option : --

Q.23 With reference to the constitutional provisions regarding Rajya Sabha, which of the following statements is correct?

- Ans
- 1. The Vice-president of India is ex officio Chairman of the Rajya Sabha.
 - 2. The Attorney-General of India is ex officio Chairman of the Rajya Sabha.
 - 3. The President of India is ex officio Chairman of the Rajya Sabha.
 - 4. The Prime Minister of India is ex officio Chairman of the Rajya Sabha.

Question ID : 65497834217
Status : Answered
Chosen Option : 1

Q.24 When was the Fit India movement launched to encourage Indians to include fitness activities and sports in their daily lives to pave the way for a healthy and fit lifestyle?

- Ans
- 1. June 2019
 - 2. July 2019
 - 3. September 2019
 - 4. August 2019

Question ID : 65497834226
Status : Answered
Chosen Option : 4

Q.25 Who among the following took oath as Lieutenant Governor of Jammu and Kashmir in August 2020?

- Ans
- 1. Farooq Khan
 - 2. Satya Pal Mal k
 - 3. Girish Chandra Murmu
 - 4. Manoj Sinha

Question ID : 65497834216
Status : Answered
Chosen Option : 3

Section : Part C Elementary Mathematics

Q.1 In a toy factory, a worker can assemble a toy in 5 minutes. If, from 10:30 a.m. to 12:30 p.m., 1248 toys are to be assembled, then how many workers should be employed?

- Ans
- 1. 52
 - 2. 50
 - 3. 78
 - 4. 26

Question ID : 65497834243
Status : Answered
Chosen Option : 1

Q.2 A dealer sold an article at a loss of 8%. Had he sold it for ₹72 more, he would have gained 16%. The cost price of the article was:

- Ans
- 1. ₹350
 - 2. ₹300
 - 3. ₹450
 - 4. ₹400

Question ID : 65497834244
Status : Answered
Chosen Option : 2

Q.3 If the simple interest on a certain sum of money for 15 months at 9.6% per annum exceeds the simple interest on the same sum for 8 months at 11.4% by ₹1,320, then the sum is:

- Ans**
- 1. ₹30,000
 - 2. ₹32,000
 - 3. ₹28,000
 - 4. ₹25,000

Question ID : 65497834245
Status : Answered
Chosen Option : 4

Q.4 Two students A and B appeared in a class test. B scored 40% of the sum total of their marks, which is 7 less than the marks of A. How many marks did B score?

- Ans**
- 1. 5
 - 2. 14
 - 3. 12
 - 4. 21

Question ID : 65497834233
Status : Answered
Chosen Option : 2

Q.5 The LCM and HCF of two numbers are 25 and 150, respectively. If one of the numbers is 50, then what is the sum of the two numbers?

- Ans**
- 1. 100
 - 2. 175
 - 3. 75
 - 4. 125

Question ID : 65497834238
Status : Answered
Chosen Option : 4

Q.6 A shopkeeper buys a computer table for ₹5,500. What should be the marked price of the computer table such that even after allowing a 10% discount, he gains ₹1,070?

- Ans**
- 1. ₹6,050
 - 2. ₹7,227
 - 3. ₹7,300
 - 4. ₹6,570

Question ID : 65497834241
Status : Answered
Chosen Option : 3

Q.7 Two solutions A and B of acid and water contain acid and water in the ratio 7 : 9 and 5 : 3, respectively. A and B are mixed in the ratio $x : y$. If the ratio of acid and water in the resulting solution is 9 : 7, then $x : y$ is:

- Ans**
- 1. 4 : 5
 - 2. 2 : 3
 - 3. 1 : 2
 - 4. 3 : 4

Question ID : 65497834254

Status : Answered

Chosen Option : 3

Q.8 The price of a commodity has increased by 20%. The Gupta family reframed their monthly budget and plans to spend 8% more money on that particular commodity. By what percentage should they reduce its consumption so as to manage with the increased amount of money?

- Ans**
- 1. 12
 - 2. 8
 - 3. 14
 - 4. 10

Question ID : 65497834239

Status : Answered

Chosen Option : 4

Q.9 A student, walking at a speed of 5 km/h, took 50 minutes, but reached the school 10 minutes later than the scheduled time. To reach school on time, the speed of the student should be:

- Ans**
- 1. 6.5 km/h
 - 2. $\frac{25}{6}$ km/h
 - 3. 6 km/h
 - 4. $\frac{25}{4}$ km/h

Question ID : 65497834250

Status : Answered

Chosen Option : 4

Q.10 If 62% of a number is equal to three-fifth of another number, then what is the ratio of the first number to the second number?

- Ans**
- 1. 30 : 31
 - 2. 31 : 30
 - 3. 31 : 20
 - 4. 20 : 31

Question ID : 65497834236

Status : Answered

Chosen Option : 1

Q.11 Four years ago, the average age of 45 employees in an office was 32 years. During this period 3 more persons joined the company and at present the average age of the company's employees is 37 years. What is the average age of the 3 new employees?

- Ans**
- 1. 54 years 3 months
 - 2. 52 years
 - 3. 51 years
 - 4. 58 years

Question ID : 65497834231
Status : Answered
Chosen Option : 2

Q.12 The average of four 3-digit numbers $34x$, 197 , $6x4$ and 348 is 386. What is the average of $(3x + 1)$ and $(7x - 2)$?

- Ans**
- 1. 26
 - 2. 23
 - 3. 24.5
 - 4. 25.5

Question ID : 65497834253
Status : Answered
Chosen Option : 3

Q.13 A motorist travels a certain distance at an average speed of 48 km/h and returns at an average speed of 32 km/h. What is the average speed (in km/h) for the whole journey?

- Ans**
- 1. 38
 - 2. 38.4
 - 3. 39.8
 - 4. 40

Question ID : 65497834235
Status : Answered
Chosen Option : 2

Q.14 Simplify the following expression.

$$7 + 35 \div 7 \times 5 \text{ of } 6 - 1$$

- Ans**
- 1. 156
 - 2. 132
 - 3. 12
 - 4. 179

Question ID : 65497834240
Status : Answered
Chosen Option : 1

Q.15 If the ratio of the base radii of a cylinder and a cone is 1 : 2 and that of their heights is 2 : 1, then what is the ratio of the volume of the cylinder to that of the cone?

- Ans**
- 1. 2 : 3
 - 2. 1 : 1
 - 3. 2 : 1
 - 4. 3 : 2

Question ID : 65497834237
Status : Answered
Chosen Option : 4

Q.16 The LCM of two numbers is 45 times their HCF, and the sum of the LCM and HCF is 1518. If one of the numbers is divided by 16, the quotient is 18 and the remainder is 9. What is the other number?

- Ans**
- 1. 495
 - 2. 363
 - 3. 330
 - 4. 165

Question ID : 65497834252
Status : Answered
Chosen Option : 4

Q.17 $2 + 3 \div 2 \text{ of } \frac{3}{2} + 2 \left(4 \times 2 \div 2 \text{ of } \frac{1}{2} + 2 - \frac{1}{2} \right)$, after simplification, will give the result as:

- Ans**
- 1. $\frac{7}{2}$
 - 2. 21
 - 3. 19
 - 4. 22

Question ID : 65497834247
Status : Answered
Chosen Option : 2

Q.18 A shopkeeper buys a gadget for ₹1,125 after getting 25% discount. If he sells it by allowing 10% discount on the marked price, then how much does he gain?

- Ans**
- 1. ₹150
 - 2. ₹225
 - 3. ₹325
 - 4. ₹250

Question ID : 65497834232
Status : Answered
Chosen Option : 2

Q.19 A man sells two mobile phones for ₹6,000 each, gaining 25% on one and losing 25% on the other. What is his gain or loss percent in whole transaction (up to two decimal places)?

- Ans**
- 1. Profit, 6.67
 - 2. Loss, 6.67
 - 3. Loss, 6.25
 - 4. Profit, 6.25

Question ID : **65497834246**
 Status : **Answered**
 Chosen Option : **3**

Q.20 A certain sum amounts to ₹12,236 in $3\frac{3}{4}$ years at 8.8% p.a. at simple interest. What will be the simple interest (in ₹) on the same sum at the same rate in $4\frac{3}{8}$ years?

- Ans**
- 1. 3,624
 - 2. 3,542
 - 3. 3,484
 - 4. 3,524

Question ID : **65497834255**
 Status : **Answered**
 Chosen Option : **2**

Q.21 A sum of ₹39,000 is divided among A, B, C such that A's share is $\frac{1}{3}$ of B and B gets 20% more than C. A's share is:

- Ans**
- 1. ₹9,000
 - 2. ₹7,500
 - 3. ₹6,000
 - 4. ₹8,000

Question ID : **65497834248**
 Status : **Answered**
 Chosen Option : **3**

Q.22 6 men and 8 women can complete as much work in a given time as 3 men and 13 women. If a man can complete a work in 12 days, then in how many days will 4 women be able to complete the same work?

- Ans**
- 1. 5 days
 - 2. 8 days
 - 3. 4 days
 - 4. 20 days

Question ID : **65497834234**
 Status : **Answered**
 Chosen Option : **1**

Q.23 A retailer buys a tracksuit for ₹850. His overhead expenses are ₹50. If he sells the tracksuit for ₹1,170, then what is his profit percentage?

- Ans
- 1. 20
 - 2. 25
 - 3. 22
 - 4. 30

Question ID : 65497834242
Status : Answered
Chosen Option : 4

Q.24 A sum of money becomes double in 5 years at compound interest rate. The same sum of money will be 4 times of itself in:

- Ans
- 1. 12 years
 - 2. 10 years
 - 3. 8 years
 - 4. 15 years

Question ID : 65497834249
Status : Answered
Chosen Option : 2

Q.25 The circumference of a circle of diameter 14 cm is the same as the perimeter of a square. The area of the square is (take $\pi = \frac{22}{7}$):

- Ans
- 1. 400 cm²
 - 2. 256 cm²
 - 3. 121 cm²
 - 4. 289 cm²

Question ID : 65497834251
Status : Answered
Chosen Option : 3

Section : Part D English

Q.1 Select the most appropriate option that can substitute the underlined segment in the given sentence. If there is no need to substitute it, select 'No substitution required'.

I don't have some money at all.

- Ans
- 1. few
 - 2. No substitution required
 - 3. any
 - 4. little

Question ID : 65497834264
Status : Answered
Chosen Option : 3

Q.2 Select the most appropriate synonym of the given word.

Precarious

- Ans 1. Safe
 2. Insecure
 3. Stable
 4. Strange

Question ID : 65497834269
 Status : Answered
 Chosen Option : 1

Q.3 The following sentence has been split into four segments. Identify the segment that contains a grammatical error.

I will / be in school / for / 7 a.m. to 2 p.m.

- Ans 1. be in school
 2. 7 a.m. to 2 p.m.
 3. for
 4. I will

Question ID : 65497834267
 Status : Answered
 Chosen Option : 3

Q.4 Select the INCORRECTLY spelt word.

- Ans 1. Hover
 2. Dreary
 3. Monark
 4. Adorn

Question ID : 65497834274
 Status : Answered
 Chosen Option : 3

Q.5 Select the most appropriate option that can substitute the underlined segment in the given sentence. If there is no need to substitute it, select 'No substitution required'.

I have been worked hard to finish this project.

- Ans 1. No substitution required
 2. have been working
 3. working
 4. had been worked

Question ID : 65497834265
 Status : Answered
 Chosen Option : 2

Q.6 Select the correctly spelt word.

- Ans 1. Harbore
 2. Glossery
 3. Premire
 4. Orchestra

Question ID : 65497834273
 Status : Answered
 Chosen Option : 1

Q.7 Select the most appropriate option to fill in the blank.

Please _____ my subscription of the children's magazine.

- Ans 1. settle
 2. renew
 3. finish
 4. regain

Question ID : 65497834266
 Status : Answered
 Chosen Option : 2

Q.8 The following sentence has been divided into parts. One of them may contain an error. Select the part that contains the error from the given options. If you don't find any error, select 'No error' as your answer.

Jyoti is one of / the best police officer / in this town.

- Ans 1. No error
 2. the best police officer
 3. in this town
 4. Jyoti is one of

Question ID : 65497834258
 Status : Answered
 Chosen Option : 2

Q.9 Select the most appropriate ANTONYM of the given word.

Obscure

- Ans 1. Vague
 2. Dim
 3. Clear
 4. Doubtful

Question ID : 65497834256
 Status : Answered
 Chosen Option : 3

Q.10 Select the most appropriate meaning of the given idiom.

Spick and span

- Ans 1. Safe and secure
 2. Over and over again
 3. Very neat and clean
 4. Far from each other

Question ID : 65497834261
 Status : Answered
 Chosen Option : 1

Q.11 Select the option that can be used as a one-word substitute for the given group of words.

A remedy for all diseases

- Ans
- 1. Medicine
 - 2. Treatment
 - 3. Panacea
 - 4. Diagnosis

Question ID : 65497834272
Status : Answered
Chosen Option : 3

Q.12 Select the most appropriate option to fill in the blank.

The company is going to _____ the North Sea for oil.

- Ans
- 1. search
 - 2. tour
 - 3. explore
 - 4. traverse

Question ID : 65497834260
Status : Answered
Chosen Option : 3

Q.13 Select the most appropriate ANTONYM of the given word.

Reverence

- Ans
- 1. Respect
 - 2. Admiration
 - 3. Awe
 - 4. Contempt

Question ID : 65497834270
Status : Answered
Chosen Option : 4

Q.14 Select the most appropriate option that can substitute the underlined segment in the given sentence. If there is no need to substitute it, select 'No substitution required'.

During foggy weather, flights are often cancelled, isn't it?

- Ans
- 1. do they
 - 2. aren't they
 - 3. No substitution required
 - 4. haven't they

Question ID : 65497834262
Status : Answered
Chosen Option : 3

Q.15 Select the most appropriate option to fill in the blank.

The police _____ the protestors from entering the parliament.

- Ans
- 1. persuaded
 - 2. presumed
 - 3. protected
 - 4. prevented

Question ID : 65497834275
Status : Answered
Chosen Option : 4

Q.16 Select the option that can be used as a one-word substitute for the given group of words.

A place where money is coined

- Ans
- 1. Store
 - 2. Mint
 - 3. Factory
 - 4. Industry

Question ID : 65497834271
Status : Answered
Chosen Option : 2

Q.17 The following sentence has been split into four segments. Identify the segment that contains a grammatical error.

The poet / and the author / is awarded / by the President.

- Ans
- 1. by the President
 - 2. The poet
 - 3. and the author
 - 4. is awarded

Question ID : 65497834268
Status : Answered
Chosen Option : 4

Q.18 Select the most appropriate synonym of the given word.

Noble

- Ans
- 1. Dignified
 - 2. Poor
 - 3. Ordinary
 - 4. Normal

Question ID : 65497834259
Status : Answered
Chosen Option : 1

Q.19 Select the option that can be used as a one-word substitute for the given group of words.

The sound made by bees

Ans 1. Buzz

2. Hiss

3. Moo

4. Coo

Question ID : 65497834257

Status : Answered

Chosen Option : 1

Q.20 Select the most appropriate meaning of the given idiom.

At a snail's pace

Ans 1. Quickly

2. Very slowly

3. Peacefully

4. Carelessly

Question ID : 65497834263

Status : Answered

Chosen Option : 2

Comprehension:

In the following passage, some words have been deleted. Read the passage carefully and select the most appropriate option to fill in each blank.

Elephants regularly swarm to the landfill (1) _____ near a wildlife sanctuary in Sri Lanka. (2) _____ with food scraps, they consume plastic, (3) _____ slowly kills them, officials say. Images (4) _____ the elephants foraging through the waste (5) _____ environmentalists. Plastic from landfill sites is a known killer of wild elephants, which are estimated to number about 7,500 in Sri Lanka.

SubQuestion No : 21

Q.21 Select the most appropriate option to fill in blank no. 1.

Ans 1. site

2. scene

3. scenery

4. sight

Question ID : 65497834277

Status : Answered

Chosen Option : 1

Comprehension:

In the following passage, some words have been deleted. Read the passage carefully and select the most appropriate option to fill in each blank.

Elephants regularly swarm to the landfill (1) _____ near a wildlife sanctuary in Sri Lanka. (2) _____ with food scraps, they consume plastic, (3) _____ slowly kills them, officials say. Images (4) _____ the elephants foraging through the waste (5) _____ environmentalists. Plastic from landfill sites is a known killer of wild elephants, which are estimated to number about 7,500 in Sri Lanka.

SubQuestion No : 22

Q.22 Select the most appropriate option to fill in blank no. 2.

- Ans 1. Beside
 2. Next
 3. Along
 4. Across

Question ID : 65497834278

Status : Answered

Chosen Option : 3

Comprehension:

In the following passage, some words have been deleted. Read the passage carefully and select the most appropriate option to fill in each blank.

Elephants regularly swarm to the landfill (1) _____ near a wildlife sanctuary in Sri Lanka. (2) _____ with food scraps, they consume plastic, (3) _____ slowly kills them, officials say. Images (4) _____ the elephants foraging through the waste (5) _____ environmentalists. Plastic from landfill sites is a known killer of wild elephants, which are estimated to number about 7,500 in Sri Lanka.

SubQuestion No : 23

Q.23 Select the most appropriate option to fill in blank no. 3.

- Ans 1. what
 2. whom
 3. which
 4. who

Question ID : 65497834279

Status : Answered

Chosen Option : 3

Comprehension:

In the following passage, some words have been deleted. Read the passage carefully and select the most appropriate option to fill in each blank.

Elephants regularly swarm to the landfill (1) _____ near a wildlife sanctuary in Sri Lanka. (2) _____ with food scraps, they consume plastic, (3) _____ slowly kills them, officials say. Images (4) _____ the elephants foraging through the waste (5) _____ environmentalists. Plastic from landfill sites is a known killer of wild elephants, which are estimated to number about 7,500 in Sri Lanka.

SubQuestion No : 24

Q.24 Select the most appropriate option to fill in blank no. 4.

- Ans 1. on
 2. of
 3. for
 4. in

Question ID : 65497834280

Status : Answered

Chosen Option : 2

Comprehension:

In the following passage, some words have been deleted. Read the passage carefully and select the most appropriate option to fill in each blank.

Elephants regularly swarm to the landfill (1) _____ near a wildlife sanctuary in Sri Lanka. (2) _____ with food scraps, they consume plastic, (3) _____ slowly kills them, officials say. Images (4) _____ the elephants foraging through the waste (5) _____ environmentalists. Plastic from landfill sites is a known killer of wild elephants, which are estimated to number about 7,500 in Sri Lanka.

SubQuestion No : 25

Q.25 Select the most appropriate option to fill in blank no. 5.

- Ans 1. are shocking
 2. have been shocking
 3. has shocked
 4. have shocked

Question ID : 65497834281
 Status : Answered
 Chosen Option : 4

Section : Part D Hindi

Q.1 दिये गये वाक्यांश के लिए एक शब्द दीजिये।

व्यर्थ खर्च करने वाला

- Ans 1. अतिव्ययी
 2. अल्पव्ययी
 3. अपव्ययी
 4. मितव्ययी

Question ID : 65497834293
 Status : Not Answered
 Chosen Option : --

Q.2 दिये गये वाक्यांश के लिए एक सार्थक शब्द दीजिए।

कविता रचनेवाली स्त्री

- Ans 1. कवयित्री
 2. कवियत्री
 3. कवियित्री
 4. विदुषी

Question ID : 65497834284
 Status : Not Answered
 Chosen Option : --

Q.3 दिए गए शब्द के समानार्थी शब्द का चयन करें।

बेटी

- Ans 1. वनिता
 2. अगना
 3. वासा
 4. दुहिता

Question ID : 65497834295
 Status : Not Answered
 Chosen Option : --

Q.4 निम्नलिखित में से शुद्ध वर्तनी वाला शब्द कौन सा है?

- Ans 1. कोतुहल
 2. कौतुहल
 3. कौतूहल
 4. कोतूहल

Question ID : 65497834300
 Status : Not Answered
 Chosen Option : --

Q.5 रिक्त स्थान की पूर्ति के लिए सबसे उपयुक्त शब्द का चयन कीजिए।

मुझे दुर्घटना की _____ है।

- Ans 1. अभिलाषा
 2. आशा
 3. इच्छा
 4. आशका

Question ID : 65497834286
 Status : Not Answered
 Chosen Option : --

Q.6 उस विकल्प का चयन करें जो निम्न मुहावरे का अर्थ व्यक्त करता है।

कान भरना

- Ans 1. बदनाम करना
 2. सावधान करना
 3. चुगली करना
 4. प्रभावित करना

Question ID : 65497834297
 Status : Not Answered
 Chosen Option : --

Q.7 'नीरुजता' शब्द का विलोम शब्द कौनसा है?

- Ans 1. नीरस
 2. निर्धारित
 3. रुग्णता
 4. निर्दोष

Question ID : 65497834288
 Status : Not Answered
 Chosen Option : --

Q.8 दिए गए शब्द का समानार्थी शब्द बताइए-

किनारा

- Ans 1. केतु
 2. कूल
 3. केली
 4. कुल

Question ID : 65497834292
 Status : Not Answered
 Chosen Option : --

Q.9 'शिगूफा खिलाना' इस मुहावरे का अर्थ है-

- Ans
- 1. बहुत उपद्रव करना
 - 2. काल्पनिक योजनाएँ बनाना
 - 3. विचित्र बात कहना
 - 4. सिफ़ारिश करवाना

Question ID : 65497834289
Status : Not Answered
Chosen Option : --

Q.10 दिये गये वाक्यांश के लिए एक सार्थक शब्द का चयन कीजिए।

जो स्वयं उत्पन्न हुआ हो

- Ans
- 1. स्वयम्भू
 - 2. स्वावलम्बी
 - 3. सार्वभौम
 - 4. स्वाधीन

Question ID : 65497834290
Status : Not Answered
Chosen Option : --

Q.11 दिए गए वाक्य में रेखांकित खंड को प्रतिस्थापित करने के लिए सबसे उपयुक्त विकल्प का चयन करें।
यदि इसे प्रतिस्थापित करने की आवश्यकता नहीं है, तो विकल्प 'किसी बदलाव की आवश्यकता नहीं है'
का चयन करें।

योगी ने समाधि लगाई और अतर्धान हो गया।

- Ans
- 1. और अर्धान हो गया।
 - 2. और अतर्धान हो गया।
 - 3. किसी बदलाव की आवश्यकता नहीं है।
 - 4. और अत्यर्धान हो गया।

Question ID : 65497834282
Status : Not Answered
Chosen Option : --

Q.12 रिक्त स्थान की पूर्ति के लिए सबसे उपयुक्त शब्द का चयन कीजिए।

_____ न करने वाले लड़के अच्छे अंक नहीं पा सकते।

- Ans
- 1. प्रार्थना
 - 2. परिश्रम
 - 3. भक्ति
 - 4. पूजा

Question ID : 65497834283
Status : Not Answered
Chosen Option : --

Q.13 दिए गए शब्द का विलोम चुनें।

आदर

- Ans 1. अपमान
 2. सम्मान
 3. सादर
 4. निरादर

Question ID : 65497834296

Status : Not Answered

Chosen Option : --

Q.14 दिए गए वाक्य का वह भाग ज्ञात करें जिसमें कोई त्रुटि है। यदि कोई त्रुटि नहीं है, तो 'कोई त्रुटि नहीं है' चुनें।

हमारा लक्ष्य (1)/ देश की चहुमुखी प्रगति (2)/ होनी चाहिए (3)/ कोई त्रुटि नहीं है (4)

- Ans 1. 3
 2. 2
 3. 4
 4. 1

Question ID : 65497834294

Status : Not Answered

Chosen Option : --

Q.15 दिये गये वाक्य में रेखांकित अश को प्रतिस्थापित करने के लिए सबसे उपयुक्त विकल्प का चयन करें।

युवती ने स्वर्ण आवरण पहन रखे हैं।

- Ans 1. वस्त्र
 2. आभरण
 3. सुवर्ण
 4. परिधान

Question ID : 65497834301

Status : Not Answered

Chosen Option : --

Q.16 दिए गए वाक्य का वह भाग ज्ञात करें जिसमें कोई त्रुटि है। यदि कोई त्रुटि नहीं है, तो 'कोई त्रुटि नहीं है' चुनें।

नाटक समारोह का (1)/ सारा उत्तरदायित्व (2)/ छात्रों के ऊपर है। (3)/ कोई त्रुटि नहीं है (4)

- Ans 1. 2
 2. 3
 3. 1
 4. 4

Question ID : 65497834287

Status : Not Answered

Chosen Option : --

Q.17 दिए गए वाक्य में रेखांकित खंड को प्रतिस्थापित करने के लिए सबसे उपयुक्त विकल्प का चयन करें। यदि इसे प्रतिस्थापित करने की आवश्यकता नहीं है, तो विकल्प 'किसी बदलाव की आवश्यकता नहीं है' का चयन करें।

भारत के और देशों के साथ सबंध अच्छे हैं।

- Ans
- 1. और देशों के साथ
 - 2. और देशों के साथ
 - 3. और देश के साथ
 - 4. किसी बदलाव की आवश्यकता नहीं है।

Question ID : 65497834285

Status : Not Answered

Chosen Option : --

Q.18 रिक्त स्थान की पूर्ति के लिए सबसे उपयुक्त शब्द का चयन करें।

उसे फासी पर _____ गया था।

- Ans
- 1. लटकाया
 - 2. चढ़ाया
 - 3. झुलाया
 - 4. उठाया

Question ID : 65497834298

Status : Not Answered

Chosen Option : --

Q.19 दिए गए वाक्य का वो भाग ज्ञात करें जिसमें कोई त्रुटि है। यदि कोई त्रुटि नहीं है, तो 'कोई त्रुटि नहीं है' चुनें।

प्रत्येक भारतवासी को (1)\ हिंदी का व्यावहारिक (2)\ ज्ञान होनी चाहिए। (3)\ कोई त्रुटि नहीं है (4)

- Ans
- 1. 4
 - 2. 1
 - 3. 3
 - 4. 2

Question ID : 65497834291

Status : Not Answered

Chosen Option : --

Q.20 निम्नलिखित में से शुद्ध वर्तनी वाला शब्द कौन सा है?

- Ans
- 1. यथेस्त
 - 2. यथेष्ठ
 - 3. यथेष्ट
 - 4. यथेस्थ

Question ID : 65497834299

Status : Not Answered

Chosen Option : --

Comprehension:

दिए गए गद्यांश में से कुछ शब्द हटा दिए गए हैं। सबधित प्रश्नों में प्रत्येक सख्या के लिए सबसे उपयुक्त विकल्प का चयन कीजिए।

मनुष्य स्वयं (1) _____ का निर्माता है। पर कायर मनुष्य नहीं वरन् (2) _____ ही भाग्य का सामर्थ्य रखता है। (3) _____ तो देवता को पुकारता है। साहसी मनुष्य भाग्य के हाथ की (4) _____ नहीं बनता अपितु स्वयं अपने भाग्य का निर्माण करता है, क्योंकि उसे अपनी शक्ति पर विश्वास होता है। मनुष्य के समक्ष कार्यों की सफलता, असफलता भाग्य पर नहीं, उसके (5) _____ पर आधारित है।

SubQuestion No : 21

Q.21 गद्यांश के रिक्त स्थान (1) के लिए सर्वाधिक उपयुक्त शब्द होगा-

- Ans
- 1. देश
 - 2. विश्व
 - 3. भाग्य
 - 4. शक्ति

Question ID : 65497834303

Status : Not Answered

Chosen Option : --

Comprehension:

दिए गए गद्यांश में से कुछ शब्द हटा दिए गए हैं। सबधित प्रश्नों में प्रत्येक सख्या के लिए सबसे उपयुक्त विकल्प का चयन कीजिए।

मनुष्य स्वयं (1) _____ का निर्माता है। पर कायर मनुष्य नहीं वरन् (2) _____ ही भाग्य का सामर्थ्य रखता है। (3) _____ तो देवता को पुकारता है। साहसी मनुष्य भाग्य के हाथ की (4) _____ नहीं बनता अपितु स्वयं अपने भाग्य का निर्माण करता है, क्योंकि उसे अपनी शक्ति पर विश्वास होता है। मनुष्य के समक्ष कार्यों की सफलता, असफलता भाग्य पर नहीं, उसके (5) _____ पर आधारित है।

SubQuestion No : 22

Q.22 गद्यांश के रिक्त स्थान (2) के लिए सर्वाधिक उपयुक्त शब्द होगा-

- Ans
- 1. सत
 - 2. सबल
 - 3. ईश्वर
 - 4. दुर्बल

Question ID : 65497834304

Status : Not Answered

Chosen Option : --

Comprehension:

दिए गए गद्यांश में से कुछ शब्द हटा दिए गए हैं। सबधित प्रश्नों में प्रत्येक सख्या के लिए सबसे उपयुक्त विकल्प का चयन कीजिए।

मनुष्य स्वयं (1) _____ का निर्माता है। पर कायर मनुष्य नहीं वरन् (2) _____ ही भाग्य का सामर्थ्य रखता है। (3) _____ तो देवता को पुकारता है। साहसी मनुष्य भाग्य के हाथ की (4) _____ नहीं बनता अपितु स्वयं अपने भाग्य का निर्माण करता है, क्योंकि उसे अपनी शक्ति पर विश्वास होता है। मनुष्य के समक्ष कार्यों की सफलता, असफलता भाग्य पर नहीं, उसके (5) _____ पर आधारित है।

SubQuestion No : 23

Q.23 गद्यांश के रिक्त स्थान (3) के लिए सर्वाधिक उपयुक्त शब्द होगा-

- Ans
- 1. शक्तिशाली
 - 2. कायर
 - 3. कमजोर
 - 4. साहसी

Question ID : 65497834305

Status : Not Answered

Chosen Option : --

Comprehension:

दिए गए गद्यांश में से कुछ शब्द हटा दिए गए हैं। सबधित प्रश्नों में प्रत्येक सख्या के लिए सबसे उपयुक्त विकल्प का चयन कीजिए।

मनुष्य स्वयं (1) _____ का निर्माता है। पर कायर मनुष्य नहीं वरन् (2) _____ ही भाग्य का सामर्थ्य रखता है। (3) _____ तो देवता को पुकारता है। साहसी मनुष्य भाग्य के हाथ की (4) _____ नहीं बनता अपितु स्वयं अपने भाग्य का निर्माण करता है, क्योंकि उसे अपनी शक्ति पर विश्वास होता है। मनुष्य के समक्ष कार्यों की सफलता, असफलता भाग्य पर नहीं, उसके (5) _____ पर आधारित है।

SubQuestion No : 24

Q.24 गद्यांश के रिक्त स्थान (4) के लिए सर्वाधिक उपयुक्त शब्द होगा-

- Ans 1. खिलौना
 2. कठपुतली
 3. नियता
 4. निर्माता

Question ID : 65497834306

Status : Not Answered

Chosen Option : --

Comprehension:

दिए गए गद्यांश में से कुछ शब्द हटा दिए गए हैं। सबधित प्रश्नों में प्रत्येक सख्या के लिए सबसे उपयुक्त विकल्प का चयन कीजिए।

मनुष्य स्वयं (1) _____ का निर्माता है। पर कायर मनुष्य नहीं वरन् (2) _____ ही भाग्य का सामर्थ्य रखता है। (3) _____ तो देवता को पुकारता है। साहसी मनुष्य भाग्य के हाथ की (4) _____ नहीं बनता अपितु स्वयं अपने भाग्य का निर्माण करता है, क्योंकि उसे अपनी शक्ति पर विश्वास होता है। मनुष्य के समक्ष कार्यों की सफलता, असफलता भाग्य पर नहीं, उसके (5) _____ पर आधारित है।

SubQuestion No : 25

Q.25 गद्यांश के रिक्त स्थान (5) के लिए सर्वाधिक उपयुक्त शब्द होगा-

- Ans 1. राजनीतिक बल
 2. मानसिक बल
 3. शारीरिक बल
 4. आर्थिक बल

Question ID : 65497834307

Status : Not Answered

Chosen Option : --

Exam Date	29/11/2021
Exam Time :	12:30 PM - 2:00 PM
Subject	Constable GD 2021

Section : Part A General Intelligence and Reasoning

Q.1 Select the letter-cluster from among the given options that can replace the question mark (?) in the following series.

AU, BO, CI, DE, ?

- Ans 1. EA
 2. HU
 3. FI
 4. GE

Question ID : 65497832911
 Status : Answered
 Chosen Option : 1

Q.2 Select the correct mirror image of the given combination when the mirror is placed at PQ as shown.

B D 9 S K C |

- Ans 1. B D 9 S K C
 2. C K S 9 D B
 3. C K S 9 D B
 4. B D 9 S K C

Question ID : 65497832931
 Status : Answered
 Chosen Option : 3

Q.3 Select the number from among the given options that can replace the question mark (?) in the following series.

9, 28, 65, 126, ?, 344

- Ans 1. 225
 2. 191
 3. 218
 4. 217

Question ID : 65497832930
 Status : Answered
 Chosen Option : 4

Q.4 'Dementia' is related to 'Memory' in the same way as 'Insomnia' is related to _____.

- Ans
- 1. Walk
 - 2. Sleep
 - 3. Run
 - 4. Forgetting

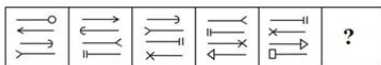
Question ID : 65497832912
 Status : Answered
 Chosen Option : 2

Q.5 In a certain code language, 'FAMILY' is written as 'QXBJSD'. How will 'FILMY' be written in the that language?

- Ans
- 1. QXBSD
 - 2. QDSBX
 - 3. QBJSD
 - 4. QJSBD

Question ID : 65497832923
 Status : Answered
 Chosen Option : 4

Q.6 Select the figure from among the given options that can replace the question mark (?) in the following series.



- Ans
- 1.
 - 2.
 - 3.
 - 4.

Question ID : 65497832935
 Status : Answered
 Chosen Option : 3

Q.7 Select the combination of letters that when sequentially placed in the blanks of the given series will complete the series.

K _ T _ STKM _ RST _ MTRS _ KM _ RST

- Ans
- 1. M, T, R, K, T, R
 - 2. K, M, R, T, T, T
 - 3. K, T, R, M, T, R
 - 4. M, R, T, K, T, T

Question ID : 65497832933

Status : Answered

Chosen Option : 4

Q.8 Four letter-clusters have been given, out of which three are alike in some manner and one is different. Select the letter-cluster that is different.

- Ans
- 1. VAQ
 - 2. XED
 - 3. ZOV
 - 4. WRU

Question ID : 65497832928

Status : Not Attempted and
Marked For Review

Chosen Option : --

Q.9 Study the given pattern carefully and select the number that can replace the question mark (?) in it.

26 18 13
50 21 46
626 ? 123

- Ans
- 1. 246
 - 2. 303
 - 3. 313
 - 4. 324

Question ID : 65497832925

Status : Not Attempted and
Marked For Review

Chosen Option : --

Q.10 Select the option that is related to the third number in the same way as the second number is related to the first number.

234 : 171 :: 2535 : ?

- Ans
- 1. 4838
 - 2. 2393
 - 3. 6414
 - 4. 3787

Question ID : 65497832919

Status : Answered

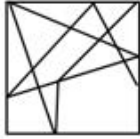
Chosen Option : 3

Q.11 Select the option in which the given figure is embedded.




Ans

✓ 1.



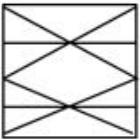
✗ 2.



✗ 3.



✗ 4.



Question ID : 65497832922

Status : Answered

Chosen Option : 1

Q.12 Select the number from among the given options that can replace the question mark (?) in the following series.

21, 22, 18, 27, 11, 36, ?

Ans ✗ 1. 2

✓ 2. 0

✗ 3. 27

✗ 4. 72

Question ID : 65497832934

Status : Answered

Chosen Option : 2

Q.13 In a row, Mansi is 29th from the left and 33rd from the right. How many students are there in the row?

Ans ✗ 1. 55

✓ 2. 61

✗ 3. 60

✗ 4. 65

Question ID : 65497832918

Status : Answered

Chosen Option : 2

Q.14 Select the correct combination of mathematical signs that can sequentially replace the '@' signs and balance the given equation.

$$13 @ 4 @ 5 @ 57$$

Ans 1. $\times, -, =$

2. $\times, +, =$

3. $+, \times, =$

4. $+, -, =$

Question ID : 65497832920

Status : Answered

Chosen Option : 2

Q.15 A class has a total of 60 students. Student 'B' is at 41st rank in merit order from the bottom. What is the rank of student 'B' from the top?

Ans 1. 21st

2. 23rd

3. 20th

4. 22nd

Question ID : 65497832915

Status : Answered

Chosen Option : 3

Q.16 In a certain code language, 'KNOW' is coded as '1614154'. How will 'HIRE' be coded in that language?

Ans 1. 18191822

2. 89185

3. 1991822

4. 199922

Question ID : 65497832929

Status : Answered

Chosen Option : 3

Q.17 Select the correct option that indicates the arrangement of the given words in the order in which they appear in an English dictionary.

1. Poverty
2. Pretension
3. Perturb
4. Pendant
5. Pollution

Ans 1. 3, 5, 2, 1, 4

2. 4, 3, 5, 1, 2

3. 4, 5, 3, 1, 2

4. 3, 4, 2, 1, 5

Question ID : 65497832932

Status : Answered

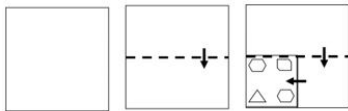
Chosen Option : 2

Q.18 In a class of 72 students, the number of boys is twice the number of girls. Find the number of boys.

- Ans 1. 48
 2. 36
 3. 18
 4. 24

Question ID : 65497832926
 Status : Answered
 Chosen Option : 1

Q.19 The sequence of folding a piece of paper and the manner in which the folded paper has been cut is shown in the following figures. How would this paper look when unfolded?



Ans

- 1.
- 2.
- 3.
- 4.

Question ID : 65497832927
 Status : Answered
 Chosen Option : 1

Q.20 Dheeraj said to Sandeep, "My mother is the only daughter of your mother." How is Dheeraj's mother related to Sandeep?

- Ans 1. Sister
 2. Aunty
 3. Mother
 4. Grandmother

Question ID : 65497832916
 Status : Answered
 Chosen Option : 1

Q.21 Read the given statements and conclusions carefully. Assuming that the information given in the statements is true, even if it appears to be at variance with commonly known facts, decide which of the given conclusions logically follow(s) from the statements.

Statements:

All boys are graduates.
All graduates are married.

Conclusions:

I. All boys are married.
II. All graduates are married.

- Ans**
- 1. Only conclusion I follows
 - 2. Only conclusion II follows
 - 3. Both the conclusions follow
 - 4. Either conclusion I or II follows

Question ID : 65497832924

Status : Answered

Chosen Option : 3

Q.22 Select the option that is related to the third term in the same way as the second term is related to the first term.

DRON : BPML :: HOST : ?

- Ans**
- 1. MRQF
 - 2. FMQR
 - 3. MFRQ
 - 4. FMRQ

Question ID : 65497832913

Status : Answered

Chosen Option : 2

Q.23 In a certain code language, ROM is written as $\alpha \times @$ and HEIGHT is written as $\epsilon \div \beta \odot \infty *$. How will TIGER be written in that language?

- Ans**
- 1. $*\beta \odot + @$
 - 2. $\odot + @ * \beta$
 - 3. $\times \div \beta \odot *$
 - 4. $*\beta \odot + \alpha$

Question ID : 65497832914

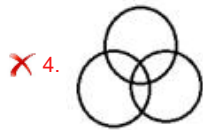
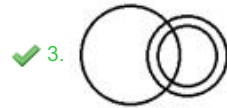
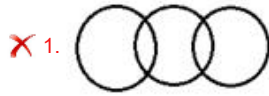
Status : Answered

Chosen Option : 4

Q.24 Select the Venn diagram that best represents the relationship between the following classes.

Students, Players, Cricket players

Ans

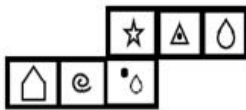


Question ID : 65497832917

Status : Answered

Chosen Option : 4

Q.25 Select the box that can be formed by folding the given sheet along the lines.



Ans



Question ID : 65497832921

Status : Answered

Chosen Option : 3

Q.1 Who among the following launched the India Climate Change Knowledge Portal in November 2020?

- Ans 1. Jagan Mohan Reddy
 2. Prakash Javadekar
 3. Nitish Kumar
 4. S Jaishankar

Question ID : 65497832943
Status : Answered
Chosen Option : 2

Q.2 Real GDP is a measure of a country's total _____.

- Ans 1. income of the farmers
 2. economic output
 3. bank transactions
 4. wealth of the industrialists

Question ID : 65497832957
Status : Answered
Chosen Option : 2

Q.3 Who among the following was the first ruler of the Gupta dynasty to adopt the grand title of Maharaj-adhiraja?

- Ans 1. Kumaragupta
 2. Ramagupta
 3. Chandragupta
 4. Skandagupta

Question ID : 65497832959
Status : Answered
Chosen Option : 3

Q.4 Who among the following was the first Gupta ruler to assume the title of Maharajadhiraja?

- Ans 1. Samudragupta
 2. Chandragupta I
 3. Chandragupta II
 4. Ramgupta

Question ID : 65497832938
Status : Answered
Chosen Option : 2

Q.5 The Citizenship Act of _____ deals with matters relating to acquisition, determination and termination of Indian citizenship after the commencement of the Constitution.

- Ans 1. 1955
 2. 1957
 3. 1951
 4. 1961

Question ID : 65497832941
Status : Answered
Chosen Option : 1

Q.6 Which of the following is NOT a feature of 'Ocean currents'?

- Ans
- 1. They flow in a definite direction.
 - 2. They are streams of water.
 - 3. They constantly flow on the ocean's surface.
 - 4. They do not have any definite direction.

Question ID : 65497832955
Status : Answered
Chosen Option : 3

Q.7 The International Olympic Committee's new headquarters at _____ was awarded the European 2020 US Green Building Council (USGBC) Leadership Award.

- Ans
- 1. Basel
 - 2. New York
 - 3. Paris
 - 4. Lausanne

Question ID : 65497832948
Status : Answered
Chosen Option : 1

Q.8 'Janamsakhis', literally meaning birth stories, are writings which profess to be biographies of:

- Ans
- 1. Kabir Das
 - 2. Narsinh Mehta
 - 3. Guru Nanak
 - 4. Guru Arjun Dev

Question ID : 65497832945
Status : Not Answered
Chosen Option : --

Q.9 Which of the following substances is an alloy?

- Ans
- 1. Zirconium
 - 2. Bronze
 - 3. Tungsten
 - 4. Platinum

Question ID : 65497832958
Status : Answered
Chosen Option : 2

Q.10 Which of the following is NOT a measure of government deficit?

- Ans
- 1. Fiscal deficit
 - 2. Revenue expenditure
 - 3. Primary deficit
 - 4. Revenue deficit

Question ID : 65497832949
Status : Answered
Chosen Option : 2

Q.11 The Nagzira Tiger Reserve is located in _____.

- Ans 1. Goa
 2. Maharashtra
 3. Sikkim
 4. Rajasthan

Question ID : 65497832937
Status : Answered
Chosen Option : 1

Q.12 The first general election of Independent India was held in _____.

- Ans 1. 1961-62
 2. 1951-52
 3. 1967-68
 4. 1957-58

Question ID : 65497832940
Status : Answered
Chosen Option : 2

Q.13 What is the boundary region from where there is a rapid decrease of temperature in the ocean called?

- Ans 1. Continental margin
 2. Thermocline
 3. Oceanic ridges
 4. Hydroplane

Question ID : 65497832952
Status : Answered
Chosen Option : 2

Q.14 The 'kathaks' (of a dance form called Kathak), were originally a caste of _____ in temples of North India.

- Ans 1. bhajan singers
 2. rhyme reciters
 3. script writers
 4. story tellers

Question ID : 65497832951
Status : Answered
Chosen Option : 2

Q.15 Who among the following was the first Home Minister of India?

- Ans 1. Gulzarilal Nanda
 2. Sardar Vallabhbhai Patel
 3. Gobind Ballabh Pant
 4. Lal Bahadur Shastri

Question ID : 65497832953
Status : Answered
Chosen Option : 4

Q.16 Momentum of a body is defined to be the product of its:

- Ans
- 1. weight and velocity
 - 2. weight and speed
 - 3. mass and length
 - 4. mass and velocity

Question ID : 65497832946

Status : Answered

Chosen Option : 4

Q.17 Which of the following state governments in its budget for 2020-21 announced the 'Orunodoi Scheme'?

- Ans
- 1. Mizoram
 - 2. Assam
 - 3. Manipur
 - 4. Nagaland

Question ID : 65497832960

Status : Not Answered

Chosen Option : --

Q.18 Which of the following terms is NOT used in cricket?

- Ans
- 1. Square leg
 - 2. Mid leg
 - 3. Gully
 - 4. Fine leg

Question ID : 65497832956

Status : Answered

Chosen Option : 2

Q.19 Who among the following inaugurated GST Bhawan in Panchkula in November 2020?

- Ans
- 1. Rajiv Kumar
 - 2. Ajit Kumar
 - 3. Amit Shah
 - 4. Narendra Modi

Question ID : 65497832942

Status : Answered

Chosen Option : 1

Q.20 Which of the following sports has recently (in December 2020) been registered as an official Olympic sport, to make its debut at the 2024 Paris Games?

- Ans
- 1. Bowling
 - 2. Breakdancing
 - 3. Squash
 - 4. Karate

Question ID : 65497832954

Status : Answered

Chosen Option : 2

Q.21 As of March 2021, what is the rate of premium on the sum assured in case of Kharif crops under 'Pradhan Mantri Fasal Bima Yojana'?

- Ans
- 1. 2.50%
 - 2. 1.50%
 - 3. 2.00%
 - 4. 1.00%

Question ID : 65497832936

Status : Not Attempted and Marked For Review

Chosen Option : --

Q.22 Chlamydomonas is an example of:

- Ans
- 1. bacteria
 - 2. algae
 - 3. fungi
 - 4. viruses

Question ID : 65497832947

Status : Not Answered

Chosen Option : --

Q.23 Which of the following teams won the trophy of Indian Premier League 2020?

- Ans
- 1. Delhi Capitals
 - 2. Sunrisers Hyderabad
 - 3. Mumbai Indians
 - 4. Royal Challengers Bangalore

Question ID : 65497832944

Status : Answered

Chosen Option : 3

Q.24 Raziyya, the first female Muslim ruler, was the daughter of which Turkish ruler of India?

- Ans
- 1. Shams-ud-din Iltutmish
 - 2. Ghiyasuddin Balban
 - 3. Qutbuddin Aibak
 - 4. Muiz-ud-din Bahram

Question ID : 65497832950

Status : Not Answered

Chosen Option : --

Q.25 In which of the following years was the Gadar Party formed in the US?

- Ans
- 1. 1915
 - 2. 1924
 - 3. 1913
 - 4. 1919

Question ID : 65497832939

Status : Answered

Chosen Option : 3

Q.1 The cost of 6 flats was ₹60 lakh each. A builder sold one-third of the flats at 15% profit and one-sixth of the flats at 6% loss. If he incurred a net loss of 10% after selling the remaining flats, what was his loss percentage in the remaining flats?

- Ans**
- 1. 38%
 - 2. 18%
 - 3. 28%
 - 4. 30%

Question ID : 65497832971
Status : Answered
Chosen Option : 3

Q.2 A shopkeeper has a certain number of apples, of which 15% are found to be rotten. He sells 90% of the remaining good apples and still has 34 good apples. How many apples did he originally have?

- Ans**
- 1. 450
 - 2. 300
 - 3. 420
 - 4. 400

Question ID : 65497832966
Status : Answered
Chosen Option : 4

Q.3 The value of $18 \div [92 \div 2 \text{ of } 8 + 3\frac{1}{4}]$ is:

- Ans**
- 1. 2
 - 2. 9
 - 3. 4
 - 4. 1

Question ID : 65497832963
Status : Answered
Chosen Option : 1

Q.4 At what rate of simple interest will a sum of ₹4,500 amount to ₹5,310 after 3 years?

- Ans**
- 1. 7%
 - 2. 8%
 - 3. 6.5%
 - 4. 6%

Question ID : 65497832976
Status : Answered
Chosen Option : 4

Q.5 Madhu sold a watch at a profit of 12%. Had she sold it for ₹28.80 more, she would have gained 18.4%. What was the cost price (in ₹) of the watch?

- Ans**
- 1. 540
 - 2. 450
 - 3. 500
 - 4. 480

Question ID : 65497832980
Status : Answered
Chosen Option : 2

Q.6 The ratio of the curved surface area and volume of a closed cylinder is 4 : 5. If its total surface area is 187 cm^2 , then its height (in cm) is (Take $\pi = \frac{22}{7}$):

- Ans**
- 1. 10.7
 - 2. 9.4
 - 3. 12.5
 - 4. 11.9

Question ID : 65497832962
Status : Answered
Chosen Option : 1

Q.7 A team of eight men entered for a shooting competition. The best marksman scored 82 points. If he had scored 90 points, the average scores for the team would have been 84. How many points altogether did the team score?

- Ans**
- 1. 646
 - 2. 564
 - 3. 546
 - 4. 664

Question ID : 65497832974
Status : Answered
Chosen Option : 4

Q.8 What is the length (in cm) of the longest rod that can be fitted in a box of dimensions $16 \text{ cm} \times 12 \text{ cm} \times 10 \text{ cm}$?

- Ans**
- 1. $10\sqrt{5}$
 - 2. 20
 - 3. $12\sqrt{5}$
 - 4. $10\sqrt{3}$

Question ID : 65497832983
Status : Answered
Chosen Option : 1

Q.9 A rectangular courtyard 1017 feet long and 1002 feet wide is to be paved exactly with square tiles, all of the same size. What is the side of such largest tiles which could be used for the purpose?

- Ans**
- 1. 5 feet
 - 2. 16 feet
 - 3. 10 feet
 - 4. 3 feet

Question ID : 65497832973
Status : Answered
Chosen Option : 4

Q.10 A shopkeeper fixes the marked price of an article at 23% more than the cost price. He sold two-third of the articles at the marked price and the rest at a discount of 25% on the marked price. What is his total gain percentage?

- Ans**
- 1. 12.15%
 - 2. 12.25%
 - 3. 12.50%
 - 4. 12.75%

Question ID : 65497832979
Status : Answered
Chosen Option : 4

Q.11 Manish sells an article by keeping the marked price of the article 44% higher than its cost price. Find his profit percentage or loss percentage if he gives 27.5% discount.

- Ans**
- 1. Profit 4.4%
 - 2. Loss 8%
 - 3. Loss 4.4%
 - 4. Profit 8%

Question ID : 65497832965
Status : Answered
Chosen Option : 1

Q.12 The HCF of 108 and 198 is:

- Ans**
- 1. 34
 - 2. 98
 - 3. 12
 - 4. 18

Question ID : 65497832977
Status : Answered
Chosen Option : 4

Q.13 22 men can complete a piece of work in $7\frac{1}{2}$ days. How many men will be required to complete the same work in $5\frac{1}{2}$ days?

- Ans**
- 1. 28
 - 2. 25
 - 3. 32
 - 4. 30

Question ID : 65497832968
Status : Answered
Chosen Option : 4

Q.14 Find the value of 9 of $\{(4 \div 2) \times [2 - (4 \text{ of } 6 \div 2)] + (6 \times 1 \div 3)\} - 5$.

- Ans**
- 1. -99
 - 2. -167
 - 3. -157
 - 4. -150

Question ID : 65497832984
Status : Answered
Chosen Option : 2

Q.15 A train travels at an average speed of 40 km per hour for $3\frac{1}{2}$ h and then travels at a speed of 60 km per hour for $2\frac{1}{2}$ h. How far does the train travel in the entire 6 h?

- Ans**
- 1. 215 km
 - 2. 245 km
 - 3. 270 km
 - 4. 290 km

Question ID : 65497832985
Status : Answered
Chosen Option : 3

Q.16 The average of the squares of two consecutive even natural numbers is 170. The average of the two numbers is:

- Ans**
- 1. 17
 - 2. 15
 - 3. 11
 - 4. 13

Question ID : 65497832964
Status : Answered
Chosen Option : 4

Q.17 Find the compound interest on ₹8,100 at a rate of 20% per annum for 6 months compounded quarterly.

- Ans**
- 1. ₹830.25
 - 2. ₹800.75
 - 3. ₹780.60
 - 4. ₹950.50

Question ID : 65497832982
Status : Answered
Chosen Option : 1

Q.18 When x is added to each of 6, 12, 18 and 28, then the numbers so obtained in this order are in a proportion. The value of $(5x + 6) : (x - 1)$ is equal to:

- Ans**
- 1. 7 : 2
 - 2. 6 : 1
 - 3. 1 : 6
 - 4. 2 : 7

Question ID : 65497832961
 Status : Answered
 Chosen Option : 2

Q.19 Vishnu left place A at 10 a.m. for place B, and Sudeep left place B at 2 p.m. for place A. The distance between the two places is 556 km. If Vishnu's speed is 42 km/h and Sudeep's speed is 55 km/h, then at what time will they meet each other?

- Ans**
- 1. 8 p.m.
 - 2. 5 p.m.
 - 3. 7 p.m.
 - 4. 6 p.m.

Question ID : 65497832970
 Status : Not Attempted and Marked For Review
 Chosen Option : --

Q.20 Salaries of Ravi and Sumit are in the ratio 2 : 3. If the salary of each is increased by ₹5,000, the new ratio will become 5 : 7. What is Sumit's increased salary?

- Ans**
- 1. ₹40,000
 - 2. ₹30,000
 - 3. ₹25,000
 - 4. ₹35,000

Question ID : 65497832975
 Status : Answered
 Chosen Option : 1

Q.21 Find the compound interest if a sum of ₹7,000 is invested for 1.5 years at 20% p.a. compounded half-yearly.

- Ans**
- 1. ₹3,337
 - 2. ₹2,137
 - 3. ₹2,017
 - 4. ₹2,317

Question ID : 65497832972
 Status : Answered
 Chosen Option : 4

Q.22 A is 15% of B, while B is 12% of C. If $C = 1200$, then $A + B = ?$

- Ans 1. 165.6
 2. 216.8
 3. 128.6
 4. 174.8

Question ID : 65497832978
 Status : Answered
 Chosen Option : 1

Q.23 The profit obtained by selling an article for ₹1,850 is twice the profit obtained by selling the article for ₹1,600. The cost price of the article is:

- Ans 1. ₹1,300
 2. ₹1,350
 3. ₹1,250
 4. ₹1,200

Question ID : 65497832967
 Status : Answered
 Chosen Option : 2

Q.24 If $3p = 4q$ and $3q = 5r$, then find the ratio $p : r$.

- Ans 1. 5 : 9
 2. 15 : 9
 3. 20 : 15
 4. 20 : 9

Question ID : 65497832981
 Status : Answered
 Chosen Option : 4

Q.25 A and B together can complete $\frac{1}{5}$ of a work in $4\frac{4}{5}$ days. A alone completes $\frac{3}{4}$ of the work in 30 days. How long will B alone take to complete the whole work?

- Ans 1. 50 days
 2. 48 days
 3. 40 days
 4. 60 days

Question ID : 65497832969
 Status : Not Attempted and Marked For Review
 Chosen Option : --

Q.1 Select the most appropriate synonym of the given word.

Refuge

- Ans 1. Admit
 2. Shelter
 3. Entrance
 4. Arrival

Question ID : 65497832989
Status : Answered
Chosen Option : 2

Q.2 Select the most appropriate option that can substitute the underlined segment in the given sentence. If there is no need to substitute it, select 'No substitution required'.

Wash and dry the raw mangoes, and use a fork to prick it all over.

- Ans 1. for prick it all over
 2. No substitution required
 3. for all over pricking them
 4. to prick them all over

Question ID : 65497832987
Status : Answered
Chosen Option : 4

Q.3 Select the option that can be used as a one-word substitute for the given group of words.

Person who portrays bad character roles in cinema

- Ans 1. Villain
 2. Altruist
 3. Warrior
 4. Sadist

Question ID : 65497832986
Status : Answered
Chosen Option : 1

Q.4 Select the most appropriate ANTONYM of the given word.

Reticent

- Ans 1. Hostile
 2. Talkative
 3. Controversial
 4. Aggressive

Question ID : 65497832992
Status : Not Answered
Chosen Option : --

Q.5 Select the most appropriate option that can substitute the underlined segment in the given sentence. If there is no need to substitute it, select 'No substitution required'.

My father said to me, "Where you have kept your books?"

- Ans
- 1. you are keeping
 - 2. No substitution required
 - 3. did you kept
 - 4. have you kept

Question ID : 65497832998
Status : Answered
Chosen Option : 4

Q.6 Select the most appropriate meaning of the given idiom.

To take the bull by the horns

- Ans
- 1. To take revenge on enemies
 - 2. To be stubborn in every matter
 - 3. To try to accomplish things
 - 4. To deal with difficult situations courageously

Question ID : 65497832995
Status : Answered
Chosen Option : 4

Q.7 Select the correctly spelt word.

- Ans
- 1. Absolutly
 - 2. Adaptation
 - 3. Abandan
 - 4. Acurate

Question ID : 65497832993
Status : Answered
Chosen Option : 2

Q.8 Select the most appropriate option to fill in the blank.

He will _____ if they look after him carefully.

- Ans
- 1. pull off
 - 2. pull up
 - 3. pull through
 - 4. pull out

Question ID : 65497832994
Status : Answered
Chosen Option : 2

Q.9 Select the most appropriate meaning of the given idiom.

Down in the mouth

- Ans 1. To be depressed
 2. To be happy
 3. To feel hungry
 4. To be angry

Question ID : 65497832996
Status : Answered
Chosen Option : 1

Q.10 Select the most appropriate synonym of the given word.

Accurate

- Ans 1. Exact
 2. False
 3. Active
 4. General

Question ID : 65497832999
Status : Answered
Chosen Option : 1

Q.11 Select the most appropriate option to fill in the blank.

The word 'ecology' refers to the pattern and _____ of relationships among plants, animals and people and their environment.

- Ans 1. balance
 2. outline
 3. plan
 4. policy

Question ID : 65497832990
Status : Answered
Chosen Option : 1

Q.12 Select the most appropriate option to fill in the blank.

No changes can be made to the bond without the _____ of the partners.

- Ans 1. sympathy
 2. harmony
 3. confession
 4. consent

Question ID : 65497833001
Status : Answered
Chosen Option : 4

Q.13 The following sentence has been split into four segments. Identify the segment that contains a grammatical error.

Do you play / any other sports / beside of / cricket and football?

- Ans 1. Do you play
 2. beside of
 3. any other sports
 4. cricket and football

Question ID : 65497832997
Status : Answered
Chosen Option : 2

Q.14 Select the option that can be used as a one-word substitute for the given group of words.

Become less intense or widespread

- Ans 1. Ablaze
 2. Abode
 3. Abide
 4. Abate

Question ID : 65497833004
Status : Answered
Chosen Option : 3

Q.15 The following sentence has been divided into parts. One of them may contain an error. Select the part that contains the error from the given options. If you don't find any error, mark 'No error' as your answer.

The App has been so well-developed / that it anticipate / all the customers' needs.

- Ans 1. The App has been so well-developed
 2. all the customers' needs
 3. that it anticipate
 4. No error

Question ID : 65497833002
Status : Answered
Chosen Option : 2

Q.16 Select the INCORRECTLY spelt word.

- Ans 1. Accommodate
 2. Quarantine
 3. Unique
 4. Intregue

Question ID : 65497833005
Status : Answered
Chosen Option : 4

Q.17 The following sentence has been split into four segments. Identify the segment that contains a grammatical error.

Our team leader / told us to be at the work / by 9 a.m. / the next morning.

Ans 1. told us to be at the work

2. the next morning

3. by 9 a.m.

4. Our team leader

Question ID : 65497832988

Status : Answered

Chosen Option : 1

Q.18 Select the option that can be used as a one-word substitute for the given group of words.

A person who loves his/her country and, if necessary, will fight for it

Ans 1. Patron

2. Patriot

3. Patriarch

4. Expatriate

Question ID : 65497833000

Status : Answered

Chosen Option : 2

Q.19 Select the most appropriate ANTONYM of the given word.

AMPLE

Ans 1. Sufficient

2. Enough

3. Liberal

4. Meagre

Question ID : 65497833003

Status : Answered

Chosen Option : 4

Q.20 Select the most appropriate option that can substitute the underlined segment in the given sentence. If there is no need to substitute it, select 'No substitution required'.

Naveena won a scholarship to further studies in medicine and decided to go abroad.

Ans 1. No substitution required

2. in furthering studies with medicine

3. for further studies in medicine

4. for further study on medicine

Question ID : 65497832991

Status : Answered

Chosen Option : 3

Comprehension:

In the following passage, some words have been deleted. Read the passage carefully and select the most appropriate option to fill in each blank.

(1)_____ my thirteenth birthday, my mother made chicken pizza at home. That was the (2)_____ pizza I have ever eaten. She had made (3)_____ quantity for all my friends and everyone had a plateful. After the party got over, she (4)_____ me by gifting a beautiful pullover. The (5)_____ visit of my grandmother made my day.

SubQuestion No : 21

Q.21 Select the most appropriate option to fill in blank number 1.

- Ans 1. At
 2. On
 3. In
 4. From

Question ID : **65497833007**
 Status : **Answered**
 Chosen Option : **2**

Comprehension:

In the following passage, some words have been deleted. Read the passage carefully and select the most appropriate option to fill in each blank.

(1)_____ my thirteenth birthday, my mother made chicken pizza at home. That was the (2)_____ pizza I have ever eaten. She had made (3)_____ quantity for all my friends and everyone had a plateful. After the party got over, she (4)_____ me by gifting a beautiful pullover. The (5)_____ visit of my grandmother made my day.

SubQuestion No : 22

Q.22 Select the most appropriate option to fill in blank number 2.

- Ans 1. good
 2. better
 3. best
 4. very better

Question ID : **65497833008**
 Status : **Answered**
 Chosen Option : **3**

Comprehension:

In the following passage, some words have been deleted. Read the passage carefully and select the most appropriate option to fill in each blank.

(1)_____ my thirteenth birthday, my mother made chicken pizza at home. That was the (2)_____ pizza I have ever eaten. She had made (3)_____ quantity for all my friends and everyone had a plateful. After the party got over, she (4)_____ me by gifting a beautiful pullover. The (5)_____ visit of my grandmother made my day.

SubQuestion No : 23

Q.23 Select the most appropriate option to fill in blank number 3.

- Ans 1. insufficient
 2. sufficient
 3. little
 4. inadequate

Question ID : **65497833009**
 Status : **Answered**
 Chosen Option : **2**

Comprehension:

In the following passage, some words have been deleted. Read the passage carefully and select the most appropriate option to fill in each blank.

(1)_____ my thirteenth birthday, my mother made chicken pizza at home. That was the (2)_____ pizza I have ever eaten. She had made (3)_____ quantity for all my friends and everyone had a plateful. After the party got over, she (4)_____ me by gifting a beautiful pullover. The (5)_____ visit of my grandmother made my day.

SubQuestion No : 24

Q.24 Select the most appropriate option to fill in blank number 4.

- Ans 1. surprised
 2. tormented
 3. blasted
 4. drove

Question ID : 65497833010
 Status : Answered
 Chosen Option : 1

Comprehension:

In the following passage, some words have been deleted. Read the passage carefully and select the most appropriate option to fill in each blank.

(1)_____ my thirteenth birthday, my mother made chicken pizza at home. That was the (2)_____ pizza I have ever eaten. She had made (3)_____ quantity for all my friends and everyone had a plateful. After the party got over, she (4)_____ me by gifting a beautiful pullover. The (5)_____ visit of my grandmother made my day.

SubQuestion No : 25

Q.25 Select the most appropriate option to fill in blank number 5.

- Ans 1. undesirable
 2. uneventful
 3. untoward
 4. unexpected

Question ID : 65497833011
 Status : Answered
 Chosen Option : 4

Section : Part D Hindi

Q.1 दिए गए वाक्यांश के लिए एक शब्द चुनिए।

जो पहले हो चुका हो

- Ans 1. अपूर्व
 2. भूतपूर्व
 3. पूर्वी
 4. पूर्वकल्पित

Question ID : 65497833025
 Status : Not Answered
 Chosen Option : --

Q.2 दिये गये वाक्यांश के लिए एक शब्द दीजिये।

जिसके समान कोई दूसरा न हो

- Ans 1. अद्वितीय
 2. अग्रगण्य
 3. अनादि
 4. अनत

Question ID : 65497833018
 Status : Not Answered
 Chosen Option : --

Q.3 सही वर्तनी वाले शब्द का चयन करें।

- Ans 1. सन्न्यासी
 2. सन्यासी
 3. सन्यासी
 4. सनयासी

Question ID : 65497833022
 Status : Not Answered
 Chosen Option : --

Q.4 दिए गए वाक्य का वह भाग ज्ञात करें जिसमें कोई त्रुटि है। यदि कोई त्रुटि नहीं है, तो 'कोई त्रुटि नहीं है' चुनें।

पाँच नगरो का नाम बताईये, जहाँ जनसंख्या घनत्व अधिक है।

- Ans 1. अधिक है।
 2. जहाँ जनसंख्या घनत्व
 3. पाँच नगरो का नाम बताईये
 4. कोई त्रुटि नहीं है।

Question ID : 65497833015
 Status : Not Answered
 Chosen Option : --

Q.5 दिए गये वाक्यांश के लिए एक शब्द दीजिये।

जिसे कभी बुढ़ापा न आए

- Ans 1. अमृत्य
 2. अमर
 3. अजर
 4. अजेय

Question ID : 65497833013
 Status : Not Answered
 Chosen Option : --

Q.6 दिये गये वाक्य के किस भाग में त्रुटि है?

मैं उसकी चातुर्यता से दग रह गया।

- Ans
- 1. रह गया।
 - 2. चातुर्यता
 - 3. मैं उसकी
 - 4. से दग

Question ID : 65497833027
Status : Not Answered
Chosen Option : --

Q.7 रिक्त स्थान को भरने के लिए सबसे उपयुक्त विकल्प का चयन करें।

लता मगेशकर ने सैकड़ों _____ गाए हैं।

- Ans
- 1. सगीत
 - 2. नृत्य
 - 3. गीत
 - 4. कविता

Question ID : 65497833029
Status : Not Answered
Chosen Option : --

Q.8 दिये गये वाक्य में रेखांकित अश को प्रतिस्थापित करने के लिए सबसे उपयुक्त विकल्प का चयन करें।

व्यायाम से शारीरिक प्रगति होती है।

- Ans
- 1. अवनति
 - 2. सुदरता
 - 3. विकास
 - 4. उन्नति

Question ID : 65497833026
Status : Not Answered
Chosen Option : --

Q.9 रिक्त स्थान भरने के लिए सबसे उपयुक्त शब्द का चयन करें।

सभा _____ हो गई।

- Ans
- 1. विसर्जन
 - 2. शुरुआती
 - 3. समाप्ति
 - 4. विसर्जित

Question ID : 65497833012
Status : Not Answered
Chosen Option : --

Q.10 दिए गए वाक्य में रेखांकित खंड को प्रतिस्थापित करने के लिए सबसे उपयुक्त विकल्प का चयन करें। यदि इसे प्रतिस्थापित करने की आवश्यकता नहीं है, तो विकल्प 'किसी बदलाव की आवश्यकता नहीं है' का चयन करें।

उस समय यमुना में जल तो अधिक न थी और मगरमच्छ भी बहुत थे।

- Ans
- 1. किसी बदलाव की आवश्यकता नहीं है।
 - 2. पानी तो अधिक न थी
 - 3. जल भी अधिक न थे
 - 4. जल भी अधिक न था

Question ID : 65497833016
Status : Not Answered
Chosen Option : --

Q.11 सही वर्तनी वाले शब्द का चयन करें।

- Ans
- 1. राजनैतीक
 - 2. राजनैतिक
 - 3. राजनीतिक
 - 4. राजनितीक

Question ID : 65497833021
Status : Not Answered
Chosen Option : --

Q.12 दिए गए वाक्य का वह भाग ज्ञात करें जिसमें कोई त्रुटि है। यदि कोई त्रुटि नहीं है, तो 'कोई त्रुटि नहीं है' चुनें।

इस परिसर में (1)/ अनाधिकार प्रवेश (2)/ वर्जित है। (3)/ कोई त्रुटि नहीं है (4)

- Ans
- 1. 2
 - 2. 1
 - 3. 4
 - 4. 3

Question ID : 65497833019
Status : Not Answered
Chosen Option : --

Q.13 दिए गए शब्द का विलोम चुनें।

लघु

- Ans
- 1. दाता
 - 2. महान
 - 3. सौम्य
 - 4. गुरु

Question ID : 65497833017
Status : Not Answered
Chosen Option : --

Q.14 रिक्त स्थान को भरने के लिए सबसे उपयुक्त शब्द का चयन करें।

आज _____ बाजार जाना है।

- Ans 1. मुझे
 2. मैंने
 3. मेरे को
 4. मुझको

Question ID : 65497833023
 Status : Not Answered
 Chosen Option : --

Q.15 दिए गए वाक्य में रेखांकित खंड को प्रतिस्थापित करने के लिए सबसे उपयुक्त विकल्प का चयन करें।
 यदि इसे प्रतिस्थापित करने की आवश्यकता नहीं है, तो विकल्प 'किसी बदलाव की आवश्यकता नहीं है'
 का चयन करें।

वह मिलनसार था, इसलिए उन्होंने कई मित्र बना लिए।

- Ans 1. इसलिए उससे कई मित्र बना लिए।
 2. किसी बदलाव की आवश्यकता नहीं है।
 3. इसलिए उसने कई मित्र बना लिए।
 4. इसलिए उनके कई मित्र बना लिए।

Question ID : 65497833014
 Status : Not Answered
 Chosen Option : --

Q.16 'पत्थर की लकीर होना' मुहावरे का सही अर्थ है-

- Ans 1. मूर्ख होना
 2. कठोर होना
 3. बात पक्की होना
 4. नकल करना

Question ID : 65497833031
 Status : Not Answered
 Chosen Option : --

Q.17 'भार्या' का पर्यायवाची है-

- Ans 1. दुहिता
 2. पत्नी
 3. बहन
 4. पुत्री

Question ID : 65497833028
 Status : Not Answered
 Chosen Option : --

Q.18 'परुष' का विलोम शब्द होगा-

- Ans 1. कोमल
 2. कठोर
 3. कर्कश
 4. आकर्षक

Question ID : 65497833030
 Status : Not Answered
 Chosen Option : --

Q.19 दिए गए चार विकल्पों में से, उस विकल्प का चयन करें जो नीचे दिए मुहावरे का अर्थ व्यक्त करता है।

भाड़ झोकना

- Ans 1. व्यर्थ समय खोना
 2. सहायता करना
 3. आग जलाना
 4. काम करना

Question ID : 65497833024
 Status : Not Answered
 Chosen Option : --

Q.20 दिए गए शब्द के समानार्थी शब्द का चयन करें।

लहर

- Ans 1. धारा
 2. उर्मिल
 3. ऊर्मि
 4. बहाव

Question ID : 65497833020
 Status : Not Answered
 Chosen Option : --

Comprehension:

दिए गए अनुच्छेद में कुछ शब्द हटा दिए गए हैं। दिए गए विकल्पों की सहायता से रिक्त स्थान भरें। प्रत्येक सख्या के लिए सबसे उपयुक्त विकल्प का चयन करें।

उन दिनों हम रेलवे क्रांटरो में रहते थे। मैं अपने (1) _____ केशव के साथ घर की ओर चला जा रहा था। एकाएक तेज (2) _____ चलने लगी। अचानक (3) _____ करता हुआ एक बहुत (4) _____ शीशम वृक्ष गिर पड़ा। केशव (5) _____ बचा।

SubQuestion No : 21

Q.21 गद्यांश के रिक्त स्थान (1) के लिए सर्वाधिक उपयुक्त शब्द होगा-

- Ans 1. दुश्मन
 2. मित्र
 3. व्यक्ति
 4. आदमी

Question ID : 65497833033
 Status : Not Answered
 Chosen Option : --

Comprehension:

दिए गए अनुच्छेद में कुछ शब्द हटा दिए गए हैं। दिए गए विकल्पों की सहायता से रिक्त स्थान भरें। प्रत्येक सख्या के लिए सबसे उपयुक्त विकल्प का चयन करें।

उन दिनों हम रेलवे क्रांटरो में रहते थे। मैं अपने (1) _____ केशव के साथ घर की ओर चला जा रहा था। एकाएक तेज (2) _____ चलने लगी। अचानक (3) _____ करता हुआ एक बहुत (4) _____ शीशम वृक्ष गिर पड़ा। केशव (5) _____ बचा।

SubQuestion No : 22

Q.22 गद्यांश के रिक्त स्थान (2) के लिए सर्वाधिक उपयुक्त शब्द होगा-

- Ans
- 1. अधड़
 - 2. बवडर
 - 3. तूफ़ान
 - 4. हवा

Question ID : 65497833034

Status : Not Answered

Chosen Option : --

Comprehension:

दिए गए अनुच्छेद में कुछ शब्द हटा दिए गए हैं। दिए गए विकल्पों की सहायता से रिक्त स्थान भरें। प्रत्येक सख्या के लिए सबसे उपयुक्त विकल्प का चयन करें।

उन दिनों हम रेलवे क्रांटरो में रहते थे। मैं अपने (1) _____ केशव के साथ घर की ओर चला जा रहा था। एकाएक तेज (2) _____ चलने लगी। अचानक (3) _____ करता हुआ एक बहुत (4) _____ शीशम वृक्ष गिर पड़ा। केशव (5) _____ बचा।

SubQuestion No : 23

Q.23 गद्यांश के रिक्त स्थान (3) के लिए सर्वाधिक उपयुक्त शब्द होगा-

- Ans
- 1. फटफट- ताड़
 - 2. छनछन- खटखट
 - 3. सनसन-फट
 - 4. कड़कड़-धड़ाम

Question ID : 65497833035

Status : Not Answered

Chosen Option : --

Comprehension:

दिए गए अनुच्छेद में कुछ शब्द हटा दिए गए हैं। दिए गए विकल्पों की सहायता से रिक्त स्थान भरें। प्रत्येक सख्या के लिए सबसे उपयुक्त विकल्प का चयन करें।

उन दिनों हम रेलवे क्रांटरो में रहते थे। मैं अपने (1) _____ केशव के साथ घर की ओर चला जा रहा था। एकाएक तेज (2) _____ चलने लगी। अचानक (3) _____ करता हुआ एक बहुत (4) _____ शीशम वृक्ष गिर पड़ा। केशव (5) _____ बचा।

SubQuestion No : 24

Q.24 गद्यांश के रिक्त स्थान (4) के लिए सर्वाधिक उपयुक्त शब्द होगा-

- Ans
- 1. विशाल
 - 2. गीला
 - 3. नन्हा
 - 4. पतला

Question ID : 65497833036

Status : Not Answered

Chosen Option : --

Comprehension:

दिए गए अनुच्छेद में कुछ शब्द हटा दिए गए हैं। दिए गए विकल्पों की सहायता से रिक्त स्थान भरें। प्रत्येक सख्खा के लिए सबसे उपयुक्त विकल्प का चयन करें।

उन दिनों हम रेलवे काटरो में रहते थे। मैं अपने (1) _____ केशव के साथ घर की ओर चला जा रहा था। एकाएक तेज (2) _____ चलने लगी। अचानक (3) _____ करता हुआ एक बहुत (4) _____ शीशम वृक्ष गिर पड़ा। केशव (5) _____ बचा।

SubQuestion No : 25

Q.25 गद्यांश के रिक्त स्थान (5) के लिए सर्वाधिक उपयुक्त शब्द होगा-

- Ans 1. थोड़ा-थोड़ा
 2. बाल-बाल
 3. बूँद भर
 4. हाथ-हाथ

Question ID : 65497833037

Status : Not Answered

Chosen Option : --

KD Job Updates

Exam Date	25/11/2021
Exam Time :	9:00 AM - 10:30 AM
Subject	Constable GD 2021

Section : Part A General Intelligence and Reasoning

Q.1 Four letter-clusters have been given, out of which three are alike in some manner and one is different. Select the letter-cluster that is different.

- Ans
- 1. NPLR
 - 2. YAWD
 - 3. SUQW
 - 4. PRNT

Question ID : 65497832546
 Status : Answered
 Chosen Option : 2

Q.2 Presently Suman is four times as old as her son. Five years ago, she was seven times as old as her son. What is the age of her son?

- Ans
- 1. 11 years
 - 2. 10 years
 - 3. 16 years
 - 4. 12 years

Question ID : 65497832540
 Status : Answered
 Chosen Option : 2

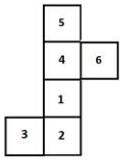
Q.3 Select the set of classes the relationship among which is best illustrated by the given Venn diagram.



- Ans
- 1. Mercury, Planets, Venus
 - 2. Businessmen, Scientists, Singers
 - 3. Spinach, Vegetables, Peach
 - 4. Women, Swimmers, Men

Question ID : 65497832545
 Status : Answered
 Chosen Option : 4

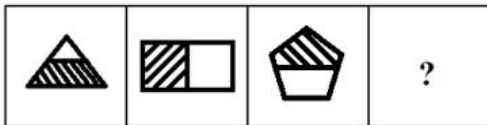
Q.4 A cube is made by folding the given sheet. In the cube so formed, select the number that will be on the face opposite the face showing the number '4'.



- Ans
- ✓ 1. 2
 - ✗ 2. 3
 - ✗ 3. 6
 - ✗ 4. 5

Question ID : 65497832552
 Status : Answered
 Chosen Option : 1

Q.5 Select the figure that will replace the question mark (?) in the following figure series:



- Ans
- ✓ 1.
 - ✗ 2.
 - ✗ 3.
 - ✗ 4.

Question ID : 65497832536
 Status : Answered
 Chosen Option : 1

Q.6 Select the correct option that indicates the arrangement of the given words in the order in which they appear in an English dictionary.

1. Nervous
2. Nobility
3. Nebulizer
4. Nominate
5. Nitrogen

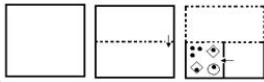
- Ans
- 1. 3, 4, 2, 5, 1
 - 2. 3, 1, 5, 2, 4
 - 3. 3, 5, 1, 2, 4
 - 4. 3, 1, 2, 5, 4

Question ID : 65497832533

Status : Answered

Chosen Option : 2

Q.7 The sequence of folding a piece of paper and the manner in which the folded paper has been cut is shown in the following figures. How would this paper look when unfolded?



Ans

- 1.
- 2.
- 3.
- 4.

Question ID : 65497832541

Status : Answered

Chosen Option : 3

Q.8 In a certain code language, 'FALSE' is coded as '2141588'. How will 'CHOICE' be coded in that language?

- Ans
- 1. 24191812248
 - 2. 6181921288
 - 3. 24181924128
 - 4. 6191812822

Question ID : 65497832547

Status : Not Answered

Chosen Option : --

Q.9 Select the number from among the given options that can replace the question mark (?) in the following series.

1, 8, 81, ?, 15625

- Ans
- 1. 1015
 - 2. 1225
 - 3. 1227
 - 4. 1024

Question ID : 65497832535
Status : Answered
Chosen Option : 4

Q.10 Select the option that is related to the third letter-cluster in the same way as the second letter-cluster is related to the first letter-cluster.

CNK : JUR :: FJL : ?

- Ans
- 1. NPR
 - 2. MQS
 - 3. OSU
 - 4. KOQ

Question ID : 65497832530
Status : Answered
Chosen Option : 2

Q.11 Select the number from among the given options that can replace the question mark (?) in the following series.

2, 10, 30, ?, 130

- Ans
- 1. 68
 - 2. 65
 - 3. 70
 - 4. 75

Question ID : 65497832549
Status : Answered
Chosen Option : 1

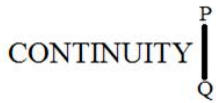
Q.12 If 'A' denotes 'addition', 'B' denotes 'multiplication', 'C' denotes 'subtraction', and 'D' denotes 'division', then what will be the value of the following expression?

483 D 23 A 93 C 16 B 4C (15 B 2)

- Ans
- 1. 30
 - 2. 78
 - 3. 20
 - 4. 55

Question ID : 65497832551
Status : Answered
Chosen Option : 3

Q.13 Select the correct mirror image of the given combination when the mirror is placed at PQ as shown.



- Ans
- 1. CONTINUITY
 - 2. YTIUNITNOC
 - 3. YTIUNITNOC
 - 4. CONTINUITY

Question ID : 65497832554
 Status : Answered
 Chosen Option : 2

Q.14 Read the given statements and conclusions carefully. Assuming that the information given in the statements is true, even if it appears to be at variance with commonly known facts, decide which of the given conclusions logically follow(s) from the statements.

Statements:
 All pens are pencils.
 Some markers are pencils.

Conclusions:
 I. All pens are markers.
 II. Some pens are markers.

- Ans
- 1. Only conclusion II follows
 - 2. None of the conclusions follow
 - 3. Only conclusion I follows
 - 4. Both the conclusions follow

Question ID : 65497832538
 Status : Answered
 Chosen Option : 2

Q.15 Select the option in which the given figure is embedded (rotation is NOT allowed).



- Ans
- 1.
 - 2.
 - 3.
 - 4.

Question ID : 65497832553
 Status : Answered
 Chosen Option : 1

Q.16 In a certain code language, 'LUCKNOW' is written as 'CULKWON' and 'UDAIPUR' is written as 'ADUIRUP'. How will 'GWALIOR' be written in that language?

- Ans
- 1. WGLAROI
 - 2. AGWLRIO
 - 3. AWGROIL
 - 4. AWGLROI

Question ID : 65497832531
 Status : Answered
 Chosen Option : 4

Q.17 Select the letter-cluster from among the given options that can replace the question mark (?) in the following series.

EIM, QUY, CGK, ?

- Ans
- 1. DHL
 - 2. LPT
 - 3. SWA
 - 4. OSW

Question ID : 65497832542
 Status : Answered
 Chosen Option : 4

Q.18 Study the given pattern carefully and select the number that can replace the question mark (?) in it.

34 18 43

47 ? 28

71 33 61

- Ans
- 1. 42
 - 2. 25
 - 3. 35
 - 4. 19

Question ID : 65497832539
 Status : Answered
 Chosen Option : 2

Q.19 Select the option that is related to the third number in the same way as the second number is related to the first number and the sixth number is related to the fifth number.

11 : 77 :: 12 : ? :: 14 : 119

- Ans
- 1. 90
 - 2. 97
 - 3. 83
 - 4. 79

Question ID : 65497832550
 Status : Answered
 Chosen Option : 1

Q.20 Nisha, who is Dileep's daughter, says to Deveshi, "Your mother Ritu is the younger sister of my father, who is the second child of Krishna". How is Krishna related to Deveshi?

- Ans
- 1. Paternal grandfather
 - 2. Father-in-law
 - 3. Father
 - 4. Maternal grandfather

Question ID : 65497832532

Status : Answered

Chosen Option : 4

Q.21 Seven doctors, S, T, U, V, X, Y and Z, are sitting around a round table, facing towards the centre, for a case study. Y is sitting third to the right of Z and between S and X. Z is sitting second to the right of U. V is sitting third to the left of X. Two doctors are sitting between Y and V. Based on the given information, which of the following statements is correct?

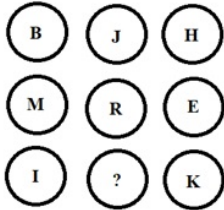
- Ans
- 1. Z is sitting between T and X.
 - 2. S is sitting fourth to the left of T.
 - 3. U is sitting to the immediate right of V.
 - 4. Four doctors are sitting between Y and Z.

Question ID : 65497832548

Status : Answered

Chosen Option : 2

Q.22 Study the given pattern carefully and select the letter that can replace the question mark (?) in it.



- Ans
- 1. T
 - 2. V
 - 3. U
 - 4. S

Question ID : 65497832534

Status : Answered

Chosen Option : 1

Q.23 M, N, L, O, Q and H are sitting in a row. Q and H are in the centre. M and N are at the ends. L is sitting to the left of N. Who is to the right of M?

- Ans
- 1. N
 - 2. O
 - 3. L
 - 4. Q

Question ID : 65497832544

Status : Answered

Chosen Option : 2

Q.24 In a certain code language, 'nuk me xil' means 'lit this light', 'ki me to' means 'the bright light', and 'nuk ki yun' means 'this is bright'. What will be the code for 'lit' in that language?

- Ans
- 1. nuk
 - 2. yun
 - 3. xil
 - 4. me

Question ID : 65497832537
Status : Answered
Chosen Option : 3

Q.25 Cataract is related to 'Eye' in the same way as Meniere's disease is related to _____.

- Ans
- 1. Nose
 - 2. Mouth
 - 3. Teeth
 - 4. Ear

Question ID : 65497832543
Status : Answered
Chosen Option : 1

Section : Part B General Knowledge and General Awareness

Q.1 The difference between the total revenue and total expenditure of the government is called _____.

- Ans
- 1. fiscal deficit
 - 2. budgetary deficit
 - 3. deflation
 - 4. primary deficit

Question ID : 65497832561
Status : Answered
Chosen Option : 4

Q.2 Who among the following is NOT a hockey player?

- Ans
- 1. Ajit Singh
 - 2. Manu Bhaker
 - 3. Deepika Thakur
 - 4. Akashdeep Singh

Question ID : 65497832578
Status : Answered
Chosen Option : 2

Q.3 In which macaronic language was a fourteenth-century text, the Lilatilakam, written?

- Ans
- 1. Rekhta
 - 2. Brāhmī
 - 3. Manipravalam
 - 4. Mozakhrif

Question ID : 65497832566
Status : Answered
Chosen Option : 3

Q.4 According to the Public Affairs Index 2020, which among the following has been adjudged the best governed state in the country in the large states category?

- Ans
- 1. Kerala
 - 2. Uttar Pradesh
 - 3. Odisha
 - 4. Rajasthan

Question ID : 65497832568
Status : Answered
Chosen Option : 1

Q.5 Which of the following books is NOT authored by Shashi Tharoor?

- Ans
- 1. The Hindu Way: An Introduction to Hinduism (2019)
 - 2. An Era of Darkness: The British Empire in India (2016)
 - 3. Making India Awesome (2015)
 - 4. The Paradoxical Prime Minister (2018)

Question ID : 65497832575
Status : Answered
Chosen Option : 3

Q.6 The human eye is like a camera. Its lens system forms an image on a light sensitive screen called the _____.

- Ans
- 1. cornea
 - 2. iris
 - 3. retina
 - 4. pupil

Question ID : 65497832572
Status : Answered
Chosen Option : 3

Q.7 Which of the following is an example of primary activity of the economic sector of India?

- Ans
- 1. Forestry
 - 2. Transport
 - 3. Communication
 - 4. Cloth weaving

Question ID : 65497832577
Status : Answered
Chosen Option : 1

Q.8 Federalism is one of the key features of the Constitution of India, under which:

- Ans
- 1. The head of the government is also head of the state
 - 2. states draw their authority from the Parliament
 - 3. all persons in India are governed by laws and policies made by the Judiciary only
 - 4. states are agents of the Federal government

Question ID : 65497832567
Status : Answered
Chosen Option : 4

Q.9 In India, National Epilepsy Day 2020 was celebrated on:

- Ans 1. 17 November
 2. 28 November
 3. 25 November
 4. 1 November

Question ID : 65497832564
Status : Answered
Chosen Option : 4

Q.10 _____ is the science that studies the structure of the body.

- Ans 1. Anatomy
 2. Cytology
 3. Palynology
 4. Palaeobotany

Question ID : 65497832562
Status : Answered
Chosen Option : 1

Q.11 Who among the following was PETA India's Person of the year 2019?

- Ans 1. Virat Kohli
 2. Sonam Kapoor
 3. Anushka Sharma
 4. PV Sindhu

Question ID : 65497832574
Status : Answered
Chosen Option : 3

Q.12 Which of the following countries will host the 2022 Asian Games?

- Ans 1. Indonesia
 2. China
 3. Japan
 4. South Korea

Question ID : 65497832576
Status : Answered
Chosen Option : 4

Q.13 Anopheles is a _____ which carries the parasite of malaria.

- Ans 1. female mosquito
 2. housefly
 3. male mosquito
 4. spider

Question ID : 65497832571
Status : Answered
Chosen Option : 1

Q.14 Which of the following countries hosted the 13th BRICS Summit in 2021?

- Ans 1. India
 2. China
 3. Russia
 4. Brazil

Question ID : 65497832560
Status : Answered
Chosen Option : 3

Q.15 The _____ is the final authority of making laws in any democratic country.

- Ans 1. Prime Minister
 2. Parliament
 3. Law Minister
 4. President

Question ID : 65497832559
Status : Answered
Chosen Option : 2

Q.16 Kulik Bird Sanctuary is located in which of the following states?

- Ans 1. Andhra Pradesh
 2. Maharashtra
 3. Madhya Pradesh
 4. West Bengal

Question ID : 65497832556
Status : Answered
Chosen Option : 1

Q.17 Holt Mackenzie and Robert Merttins Bird introduced:

- Ans 1. The Mahalwari System
 2. The Ryotwari System
 3. The Doctrine of Lapse
 4. The Permanent Settlement

Question ID : 65497832563
Status : Answered
Chosen Option : 4

Q.18 During which of the following national movements in Bengal was a tricolour flag designed?

- Ans 1. Khilafat Movement
 2. Civil Disobedience Movement
 3. Swadeshi Movement
 4. Quit India Movement

Question ID : 65497832558
Status : Answered
Chosen Option : 3

Q.19 As of July 2021, the Ayushman Bharat Pradhan Mantri Jan Arogya Yojana (AB-PM-JAY) was NOT implemented in the state of _____.

- Ans
- 1. West Bengal
 - 2. Karnataka
 - 3. Punjab
 - 4. Gujarat

Question ID : 65497832579
Status : Answered
Chosen Option : 1

Q.20 Which of the following festivals is celebrated during the Amavasya of the Kartik month?

- Ans
- 1. Govardhan puja
 - 2. Dhanteras
 - 3. Raksha Bandhan
 - 4. Diwali

Question ID : 65497832570
Status : Answered
Chosen Option : 4

Q.21 When a good is produced by exploiting natural resources, it falls in the category of:

- Ans
- 1. mining industry
 - 2. service sector
 - 3. agriculture sector
 - 4. industrial sector

Question ID : 65497832565
Status : Answered
Chosen Option : 4

Q.22 What is NOT a specific feature of commercial farming as against subsistence farming?

- Ans
- 1. It is mainly practiced in lesser developed countries
 - 2. Most of the work is done by machines
 - 3. The amount of capital used is large
 - 4. Crops are grown for sale in the market

Question ID : 65497832573
Status : Answered
Chosen Option : 1

Q.23 How many times have Mumbai Indians won the IPL title till its 2020 edition?

- Ans
- 1. 4
 - 2. 2
 - 3. 3
 - 4. 5

Question ID : 65497832555
Status : Answered
Chosen Option : 1

Q.24 The Bengal tiger was adopted as 'The national animal of India' in the year _____.

- Ans
- 1. 1978
 - 2. 1974
 - 3. 1976
 - 4. 1972

Question ID : 65497832569
Status : Answered
Chosen Option : 4

Q.25 Who among the following was the last Mughal Emperor?

- Ans
- 1. Shah Jahan
 - 2. Aurangzeb
 - 3. Akbar
 - 4. Bahadur Shah II

Question ID : 65497832557
Status : Answered
Chosen Option : 4

Section : Part C Elementary Mathematics

Q.1 P and Q can together finish a work in 21 days. They worked together for 12 days and Q left. After that, P finished the remaining work in 15 days. In how many days P alone can finish the work?

- Ans
- 1. 28 days
 - 2. 35 days
 - 3. 19 days
 - 4. 24 days

Question ID : 65497832594
Status : Answered
Chosen Option : 2

Q.2 The average height of 23 boys is 1.2 m. When 3 boys leave the group, then the average height increases by 0.15 m. What is the average height of the 3 boys who leave?

- Ans
- 1. 0.5 m
 - 2. 0.2 m
 - 3. 0.45 m
 - 4. 0.6 m

Question ID : 65497832597
Status : Answered
Chosen Option : 2

Q.3 A shopkeeper gives 10% discount on the cost of rice. A buyer could purchase 5 kg more rice for ₹720. Find the selling price of rice per kg.

- Ans**
- 1. ₹19
 - 2. ₹12
 - 3. ₹16
 - 4. ₹18

Question ID : 65497832598
Status : Answered
Chosen Option : 4

Q.4 An express train travelled at an average speed of 120 km/h, stopping for 4 min after every 80 km. How long did it take to reach its destination at the distance of 720 km from the starting point?

- Ans**
- 1. 5 h 45 min
 - 2. 7 h 15 min
 - 3. 6 h 32 min
 - 4. 5 h 24 min

Question ID : 65497832595
Status : Answered
Chosen Option : 3

Q.5 The cost of levelling a circular park at ₹6.50 per m² is ₹36,036. What is the cost (in ₹) of putting a fence around it at ₹18 per m? (Take $\pi = \frac{22}{7}$)

- Ans**
- 1. 3,960
 - 2. 4,752
 - 3. 4,644
 - 4. 4,716

Question ID : 65497832604
Status : Answered
Chosen Option : 2

Q.6 The value of $20 - [7 - \{4 - (8 - \overline{6 + 3})\}]$ is:

- Ans**
- 1. 20
 - 2. 2
 - 3. 16
 - 4. 18

Question ID : 65497832587
Status : Answered
Chosen Option : 4

Q.7 An article was sold at $\frac{5}{8}$ of its cost price. The loss per cent is:

- Ans
- 1. 35
 - 2. 27.5
 - 3. 37.5
 - 4. 32

Question ID : 65497832585
Status : Answered
Chosen Option : 3

Q.8 By what percentage is one-third of 90 lesser than three-eighths of 160?

- Ans
- 1. 45%
 - 2. 50%
 - 3. 60%
 - 4. 25%

Question ID : 65497832593
Status : Answered
Chosen Option : 2

Q.9 The sum of three numbers is 172. If the ratio of the first number to the second number is 3 : 5 and that of the second number to the third number is 7 : 6, then find the first number.

- Ans
- 1. 42
 - 2. 30
 - 3. 40
 - 4. 58

Question ID : 65497832600
Status : Answered
Chosen Option : 1

Q.10 What is the least five-digit number that is exactly divisible by 21, 35, and 56?

- Ans
- 1. 10000
 - 2. 10040
 - 3. 10920
 - 4. 10080

Question ID : 65497832589
Status : Answered
Chosen Option : 4

Q.11 A, B and C can complete a piece of work individually in $7\frac{1}{2}$ days, 15 days and 30 days, respectively. A and B start working but A quits the job after 3 days. Then C joined B and both did the work till the completion of the work. In how many days will the whole work be completed?

- Ans**
- 1. 12 days
 - 2. 7 days
 - 3. 8 days
 - 4. 6 days

Question ID : 65497832586
Status : Answered
Chosen Option : 2

Q.12 Two numbers are in the ratio 8 : 5. If 17 is subtracted from the first number and 25 is added to the second number, then the ratio becomes 1 : 3. What is the sum of the two numbers?

- Ans**
- 1. 13
 - 2. 39
 - 3. 52
 - 4. 65

Question ID : 65497832580
Status : Answered
Chosen Option : 3

Q.13 If the two numbers are, respectively, 20% and 30% less than a third number, then what percentage of the first number is the second number?

- Ans**
- 1. 87.5%
 - 2. 90.5%
 - 3. 85.5%
 - 4. 101.5%

Question ID : 65497832590
Status : Answered
Chosen Option : 1

Q.14 The amount obtained by investing a certain sum in $4\frac{3}{4}$ years at 12% p.a. at simple interest is ₹2,175 more than the simple interest on the same sum in 11 years at the same rate. The sum (in ₹) is:

- Ans**
- 1. 8,400
 - 2. 8,700
 - 3. 8,000
 - 4. 8,500

Question ID : 65497832603
Status : Answered
Chosen Option : 2

Q.15 The value of $\frac{5}{14} \div 5\frac{3}{7}$ of $\frac{7}{19} - \left(\frac{3}{4} - \frac{4}{7}\right)$ is:

- Ans 1. 0
 2. 5
 3. 10
 4. 1

Question ID : 65497832584
 Status : Answered
 Chosen Option : 1

Q.16 23 oranges were bought for ₹193.20 and sold at the rate of ₹108 per dozen. Find the profit percentage correct to one decimal place.

- Ans 1. 5.9%
 2. 8.4%
 3. 7.1%
 4. 4.5%

Question ID : 65497832582
 Status : Answered
 Chosen Option : 3

Q.17 A cyclist covers a distance of 17 km in 2 h. His speed (in km/h) is:

- Ans 1. 8
 2. 8.5
 3. 7.5
 4. 6.5

Question ID : 65497832588
 Status : Answered
 Chosen Option : 2

Q.18 A sum of ₹1,800 gives a simple interest of ₹360 in 3 years 4 months. The rate of interest per annum is:

- Ans 1. 8%
 2. 10%
 3. 6%
 4. 12%

Question ID : 65497832601
 Status : Answered
 Chosen Option : 1

Q.19 A wall clock is listed at ₹1,200 and the discount offered is 10%. What additional discount must be given to bring the net selling price to ₹945?

- Ans 1. 10%
 2. 12.5%
 3. 9.25%
 4. 15%

Question ID : 65497832592
 Status : Answered
 Chosen Option : 2

Q.20 The average salary of all the workers in an organisation is ₹9,000. The average salary of 8 technicians is ₹14,000 and the average salary of the rest is ₹5,000. Find the total number of workers in the organisation.

- Ans**
- 1. 18
 - 2. 15
 - 3. 20
 - 4. 23

Question ID : 65497832591
Status : Answered
Chosen Option : 1

Q.21 A person bought a table and a chair for ₹2,200. He sold the table at a gain of 15% and the chair at a loss of 5%, thereby gaining 4% on the whole. Find the cost of the table.

- Ans**
- 1. ₹1,125
 - 2. ₹1,050
 - 3. ₹1,200
 - 4. ₹990

Question ID : 65497832599
Status : Answered
Chosen Option : 4

Q.22 A certain sum amounts to ₹9,900 in 4 years and to ₹11,700 in 7 years at the same rate per cent per annum at simple interest. What will be the amount (in ₹) of the same sum at $9\frac{2}{3}\%$ for $2\frac{1}{4}$ years at simple interest?

- Ans**
- 1. 9,541.50
 - 2. 9,165.75
 - 3. 10,000.00
 - 4. 9,131.25

Question ID : 65497832583
Status : Answered
Chosen Option : 4

Q.23 The ratio of two numbers a and b is 5 : 8. If 5 is subtracted from a and 3 is added to b, then the ratio becomes 8 : 15. What is the difference between the two original numbers?

- Ans**
- 1. 24
 - 2. 36
 - 3. 30
 - 4. 27

Question ID : 65497832602
Status : Answered
Chosen Option : 4

Q.24 The sum of two numbers is 35 and the HCF and LCM of these numbers are 5 and 60, respectively. Find the sum of the reciprocals of the numbers.

- Ans
- 1. $\frac{3}{25}$
 - 2. $\frac{4}{15}$
 - 3. $\frac{7}{60}$
 - 4. $\frac{5}{60}$

Question ID : 65497832596

Status : Answered

Chosen Option : 3

Q.25 A cylindrical tank is 80 cm in diameter and 5.6 m in height. The cost (in ₹) of painting the curved surface of the tank at the rate of ₹20/m² is:

(Take $\pi = \frac{22}{7}$)

- Ans
- 1. 281.60
 - 2. 301.80
 - 3. 321.20
 - 4. 261.40

Question ID : 65497832581

Status : Answered

Chosen Option : 1

Section : Part D English

Q.1 Select the option that can be used as a one-word substitute for the given group of words.

The branch of biology that deals with the relations of organisms to one another and to their physical surroundings.

- Ans
- 1. Anthropology
 - 2. Ecology
 - 3. Gerontology
 - 4. Morphology

Question ID : 65497832618

Status : Answered

Chosen Option : 2

Q.2 Select the most appropriate option to fill in the blank.

It is a disorder that manifests usually in middle _____.

- Ans
- 1. ages
 - 2. age
 - 3. life
 - 4. year

Question ID : 65497832622

Status : Answered

Chosen Option : 2

Q.3 Parts of the given sentence have been given as options. One of them contains a grammatical error. Select the option that has the error.

Lack of calcium in human body usually leads against several health complications.

- Ans
- 1. leads against
 - 2. several health complications
 - 3. Lack of calcium
 - 4. in human body

Question ID : 65497832616
Status : Answered
Chosen Option : 1

Q.4 The following sentence has been split into four segments. Identify the segment that contains a grammatical error.

Sharada was cooking lunch / when I am going / to give her / the mobile phone.

- Ans
- 1. Sharada was cooking lunch
 - 2. to give her
 - 3. the mobile phone
 - 4. when I am going

Question ID : 65497832605
Status : Answered
Chosen Option : 4

Q.5 Select the most appropriate meaning of the given idiom.

Having a soft spot for

- Ans
- 1. Being too ridiculous
 - 2. Having soft skin
 - 3. Being fond of
 - 4. Being angry

Question ID : 65497832615
Status : Answered
Chosen Option : 3

Q.6 Select the most appropriate ANTONYM of the given word.

Ignorance

- Ans
- 1. Knowledge
 - 2. Truth
 - 3. Innocence
 - 4. Virtue

Question ID : 65497832619
Status : Answered
Chosen Option : 1

Q.7 Select the option that can be used as a one-word substitute for the given group of words.

Someone who buys and sells goods in large amounts to shops and businesses

- Ans 1. Wholesaler
 2. Merchant
 3. Supplier
 4. Dealer

Question ID : 65497832608
Status : Answered
Chosen Option : 1

Q.8 Select the most appropriate synonym of the given word.

Coincidence

- Ans 1. Extent
 2. Accent
 3. Chance
 4. Incident

Question ID : 65497832617
Status : Answered
Chosen Option : 3

Q.9 Select the most appropriate option that can substitute the underlined segment in the given sentence. If there is no need to substitute it, select 'No substitution required'.

Leopards and cats are belong to the same family of animals.

- Ans 1. No substitution required
 2. belong
 3. belongs
 4. belonging

Question ID : 65497832624
Status : Answered
Chosen Option : 2

Q.10 Select the option that will improve the underlined part of the sentence. In case no improvement is needed, select 'No improvement required'.

Neglected for a long time, the ancient monument needs immediate restoration.

- Ans 1. Neglecting from a long time
 2. No improvement required
 3. Having neglect for a long time
 4. Neglected in the long time

Question ID : 65497832609
Status : Answered
Chosen Option : 2

Q.11 Select the most appropriate option to fill in the blank.

An important _____ of education is to develop character.

- Ans
- 1. scheme
 - 2. purpose
 - 3. means
 - 4. image

Question ID : 65497832610
 Status : Answered
 Chosen Option : 2

Q.12 Select the most appropriate meaning of the given idiom.

To be on pins and needles

- Ans
- 1. To be in an agitated state of suspense
 - 2. To sit on a box of pins
 - 3. To be attacked from both sides
 - 4. To avoid making a decision

Question ID : 65497832620
 Status : Answered
 Chosen Option : 1

Q.13 Select the most appropriate option that can substitute the underlined segment in the given sentence. If there is no need to substitute it, select 'No substitution required'.

Mala's voice is much more melodious to Gita.

- Ans
- 1. much more melodious than Gita's
 - 2. much melodious to Gita's
 - 3. much more melodious to Gita's
 - 4. No substitution required

Question ID : 65497832606
 Status : Answered
 Chosen Option : 1

Q.14 The following sentence has been split into four segments. Identify the segment that contains a grammatical error.

The eldest / prince is / the heir / of the throne.

- Ans
- 1. of the throne
 - 2. The eldest
 - 3. the heir
 - 4. prince is

Question ID : 65497832611
 Status : Answered
 Chosen Option : 1

Q.15 Select the most appropriate option to fill in the blank.

He was in _____ of the costumes for the play.

- Ans
- 1. charge
 - 2. care
 - 3. duty
 - 4. responsibility

Question ID : 65497832623
Status : Answered
Chosen Option : 1

Q.16 Select the most appropriate ANTONYM of the given word.

Damage

- Ans
- 1. Hurt
 - 2. Ruin
 - 3. Harm
 - 4. Mend

Question ID : 65497832612
Status : Answered
Chosen Option : 4

Q.17 Select the option that can be used as a one-word substitute for the given group of words.

One who cannot be changed or reformed

- Ans
- 1. Invincible
 - 2. Inevitable
 - 3. Incapable
 - 4. Incurable

Question ID : 65497832613
Status : Answered
Chosen Option : 4

Q.18 Select the INCORRECTLY spelt word.

- Ans
- 1. Magnificent
 - 2. Gregarious
 - 3. Commitment
 - 4. Persuasion

Question ID : 65497832614
Status : Answered
Chosen Option : 1

Q.19 Select the INCORRECTLY spelt word.

- Ans
- 1. Unassuming
 - 2. Unflappable
 - 3. Unruffled
 - 4. Unanimous

Question ID : 65497832621
Status : Answered
Chosen Option : 4

Q.20 Select the most appropriate synonym of the given word.

Mirth

- Ans** 1. Delight
 2. Joint
 3. Scene
 4. View

Question ID : 65497832607

Status : Answered

Chosen Option : 1

Comprehension:

In the following passage, some words have been deleted. Read the passage carefully and select the most appropriate option to fill in each blank.

A tic is a repeated, impulsive action, which an actor feels powerless (1)_____ or avoid. Only when the individual performs the tic, is tension and anxiety (2)_____, within the individual with a tic disorder. Tics can be (3)_____ by an emotional state or sensation, and can happen for no obvious reason. General types of tics (4)_____ verbal tics, facial tics and (5)_____ muscular tics.

SubQuestion No : 21

Q.21 Select the most appropriate option to fill in blank number 1.

- Ans** 1. controls
 2. controlling
 3. to control
 4. controlled

Question ID : 65497832626

Status : Answered

Chosen Option : 3

Comprehension:

In the following passage, some words have been deleted. Read the passage carefully and select the most appropriate option to fill in each blank.

A tic is a repeated, impulsive action, which an actor feels powerless (1)_____ or avoid. Only when the individual performs the tic, is tension and anxiety (2)_____, within the individual with a tic disorder. Tics can be (3)_____ by an emotional state or sensation, and can happen for no obvious reason. General types of tics (4)_____ verbal tics, facial tics and (5)_____ muscular tics.

SubQuestion No : 22

Q.22 Select the most appropriate option to fill in blank number 2.

- Ans** 1. modified
 2. stored
 3. added
 4. released

Question ID : 65497832627

Status : Answered

Chosen Option : 2

Comprehension:

In the following passage, some words have been deleted. Read the passage carefully and select the most appropriate option to fill in each blank.

A tic is a repeated, impulsive action, which an actor feels powerless (1)_____ or avoid. Only when the individual performs the tic, is tension and anxiety (2)_____, within the individual with a tic disorder. Tics can be (3)_____ by an emotional state or sensation, and can happen for no obvious reason. General types of tics (4)_____ verbal tics, facial tics and (5)_____ muscular tics.

SubQuestion No : 23

Q.23 Select the most appropriate option to fill in blank number 3.

- Ans 1. done
 2. began
 3. triggered
 4. elicited

Question ID : 65497832628
 Status : Answered
 Chosen Option : 4

Comprehension:

In the following passage, some words have been deleted. Read the passage carefully and select the most appropriate option to fill in each blank.

A tic is a repeated, impulsive action, which an actor feels powerless (1)_____ or avoid. Only when the individual performs the tic, is tension and anxiety (2)_____, within the individual with a tic disorder. Tics can be (3)_____ by an emotional state or sensation, and can happen for no obvious reason. General types of tics (4)_____ verbal tics, facial tics and (5)_____ muscular tics.

SubQuestion No : 24

Q.24 Select the most appropriate option to fill in blank number 4.

- Ans 1. include
 2. included
 3. including
 4. includes

Question ID : 65497832629
 Status : Answered
 Chosen Option : 1

Comprehension:

In the following passage, some words have been deleted. Read the passage carefully and select the most appropriate option to fill in each blank.

A tic is a repeated, impulsive action, which an actor feels powerless (1)_____ or avoid. Only when the individual performs the tic, is tension and anxiety (2)_____, within the individual with a tic disorder. Tics can be (3)_____ by an emotional state or sensation, and can happen for no obvious reason. General types of tics (4)_____ verbal tics, facial tics and (5)_____ muscular tics.

SubQuestion No : 25

Q.25 Select the most appropriate option to fill in blank number 5.

- Ans 1. the other
 2. others
 3. another
 4. other

Question ID : 65497832630
 Status : Answered
 Chosen Option : 4

Q.1 रिक्त स्थान की पूर्ति के लिए सबसे उपयुक्त विकल्प का चयन करें।

मलेरिया एक _____ है।

- Ans
- 1. दुख
 - 2. क्लेश
 - 3. आधि
 - 4. व्याधि

Question ID : 65497832650
Status : Not Answered
Chosen Option : --

Q.2 दिये गये वाक्य में रेखांकित अश को प्रतिस्थापित करने के लिए सबसे उपयुक्त विकल्प का चयन करें।

सरकार ने कलाकार को पुरस्कार अर्पित किया।

- Ans
- 1. दान
 - 2. सम्मानित
 - 3. निर्गत
 - 4. प्रदान

Question ID : 65497832649
Status : Not Answered
Chosen Option : --

Q.3 प्रत्येक कार्य को फूक फूक कर करना चाहिए।

रेखांकित मुहावरे का अर्थ स्पष्ट कीजिए-

- Ans
- 1. जल्दी से कार्य करना
 - 2. किसी को कार्य करने को देना
 - 3. अच्छी तरह से सोचकर कार्य करना
 - 4. कार्य करने में आलस करना

Question ID : 65497832645
Status : Not Answered
Chosen Option : --

Q.4 दिए गए वाक्य का वह भाग ज्ञात करें जिसमें कोई त्रुटि है। यदि कोई त्रुटि नहीं है, तो 'कोई त्रुटि नहीं है' चुनें।

सूखा पड़ने (1)\ का कारण इस बार (2)\ फसल कम है (3)\ कोई त्रुटि नहीं है (4)

- Ans
- 1. 1
 - 2. 4
 - 3. 2
 - 4. 3

Question ID : 65497832631
Status : Not Answered
Chosen Option : --

Q.5 अशुद्ध वर्तनी को पहचानिए-

- Ans 1. पड़ोसिन
 2. चरमोत्सर्क
 3. झडा
 4. आजीविका

Question ID : 65497832646
 Status : Not Answered
 Chosen Option : --

Q.6 दिए गए शब्द के विलोम शब्द का चयन करें-

करुण

- Ans 1. मधुर
 2. नम्र
 3. निष्ठुर
 4. दयालु

Question ID : 65497832634
 Status : Not Answered
 Chosen Option : --

Q.7 शुद्ध शब्द को पहचानिए-

- Ans 1. प्रोढ़
 2. त्रतीय्य
 3. कुमुदिनी
 4. कार्यवकरम

Question ID : 65497832647
 Status : Not Answered
 Chosen Option : --

Q.8 दिए गए शब्द का विलोम चुनें।

गमन

- Ans 1. प्रस्थान
 2. आगमन
 3. आना
 4. जाना

Question ID : 65497832639
 Status : Not Answered
 Chosen Option : --

Q.9 दिए गए शब्द का समानार्थी शब्द बताइए-

वानर

- Ans 1. मधुकर
 2. कपि
 3. गज
 4. मनुज

Question ID : 65497832632
 Status : Not Answered
 Chosen Option : --

Q.10 दिए गए वाक्य में रेखांकित खंड को प्रतिस्थापित करने के लिए सबसे उपयुक्त विकल्प का चयन करें।
यदि इसे प्रतिस्थापित करने की आवश्यकता नहीं है, तो विकल्प 'किसी बदलाव की आवश्यकता नहीं है'
का चयन करें।

यह कहानी महादेवी वर्मा द्वारा लिखी है।

- Ans 1. द्वारा लिखी गयी है।
 2. से लिखी है।
 3. किसी बदलाव की आवश्यकता नहीं है।
 4. द्वारा लिखा गया है।

Question ID : 65497832638

Status : Not Answered

Chosen Option : --

Q.11 रिक्त स्थान की पूर्ति के लिए सबसे उपयुक्त शब्द का चयन करें।

पुस्तकें, _____ का सशक्त माध्यम हैं।

- Ans 1. जानने
 2. ज्ञानप्राप्ति
 3. सुज्ञानप्राप्त
 4. समझ

Question ID : 65497832637

Status : Not Answered

Chosen Option : --

Q.12 आँख में कौन गिर गया - वृत्ति का परिचय दीजिए-

- Ans 1. क्रिया की
 2. विशेषण की
 3. सर्वनाम की
 4. सज्ञा की

Question ID : 65497832643

Status : Not Answered

Chosen Option : --

Q.13 उस विकल्प का चयन करें जो निम्न मुहावरे का सही अर्थ व्यक्त करता है।

ढाक के तीन पात

- Ans 1. अव्यवस्थित होना
 2. निस्सार बातें करना
 3. व्यर्थ प्रशंसा करना
 4. सदा एक ही दशा में रहना

Question ID : 65497832640

Status : Not Answered

Chosen Option : --

Q.14 दिए गए वाक्य का वह भाग ज्ञात करें जिसमें कोई त्रुटि है। यदि कोई त्रुटि नहीं है, तो 'कोई त्रुटि नहीं है' चुनें।

स्त्री जाति के (1)\ कल्याण के लिए (2)\ एक योजना बना था। (3)\ कोई त्रुटि नहीं है (4)

- Ans
- 1. 4
 - 2. 2
 - 3. 1
 - 4. 3

Question ID : 65497832633
Status : Not Answered
Chosen Option : --

Q.15 'गोद लिया हुआ पुत्र' वाक्यांश के लिए एक शब्द होगा-

- Ans
- 1. पाल्य
 - 2. तनय
 - 3. दत्तक
 - 4. अनुज

Question ID : 65497832648
Status : Not Answered
Chosen Option : --

Q.16 दिए गये वाक्यांश के लिए एक शब्द है-

जिसका कोई अंग बेकार हो गया हो-

- Ans
- 1. वध
 - 2. कुपोषित
 - 3. विकलांग
 - 4. अनाथ

Question ID : 65497832636
Status : Not Answered
Chosen Option : --

Q.17 दिए गए वाक्य में रेखांकित खंड को प्रतिस्थापित करने के लिए सबसे उपयुक्त विकल्प का चयन करें। यदि इसे प्रतिस्थापित करने की आवश्यकता नहीं है, तो विकल्प 'किसी बदलाव की आवश्यकता नहीं है' का चयन करें।

आज से उसका लक्ष्य केवल विद्या प्राप्ति होगी।

- Ans
- 1. शेष विद्या प्राप्ति होगी।
 - 2. मात्र विद्या प्राप्ति होगी।
 - 3. किसी बदलाव की आवश्यकता नहीं है।
 - 4. केवल विद्या प्राप्ति होगा।

Question ID : 65497832642
Status : Not Answered
Chosen Option : --

Q.18 रिक्त स्थान की पूर्ति के लिए सबसे उपयुक्त शब्द का चयन करें।

यह _____ का विषय है कि हमारे देश में अनेक महापुरुष हुए।

- Ans
- 1. दुर्भाग्य
 - 2. उपेक्षित
 - 3. गर्व
 - 4. सामान्य

Question ID : 65497832641
Status : Not Answered
Chosen Option : --

Q.19 विहग - रेखांकित शब्द का पर्यायवाची कौन-सा शब्द नहीं है-

- Ans
- 1. पछी
 - 2. पक्षी
 - 3. केहरी
 - 4. खग

Question ID : 65497832644
Status : Not Answered
Chosen Option : --

Q.20 दिए गये वाक्यांश के लिए एक शब्द है-

जो एक ही माता के उदर से उत्पन्न हुए हो-

- Ans
- 1. लम्बोदर
 - 2. समआयु
 - 3. समवयस्क
 - 4. सहोदर

Question ID : 65497832635
Status : Not Answered
Chosen Option : --

Comprehension:

दिए गए गद्यांश में से कुछ शब्द हटा दिए गए हैं। संबंधित प्रश्नों में प्रत्येक सख्या के लिए सबसे उपयुक्त विकल्प का चयन करें।

नारियल खाना जितना अच्छा लगता है, उतना ही (1) _____ होता है इसे पेड़ से तोड़ना। नारियल के ऊँचें सीधे खड़े पेड़ तक पहुँचना (2) _____ खीर है। जान जोखिम में डालकर नारियल तोड़ने का काम करने वालों को बदले में (3) _____ भी बहुत कम मिलती है। इतनी (4) _____ से गिरकर कई लोग जान भी गँवा चुके हैं। केरल में अब लोग बदर पाल रहे हैं। उन्हें नारियल तोड़ने के लिए (5) _____ दिया जा रहा है। हमारे देश में बदरो की कमी नहीं है। इन्हें नारियल तोड़कर लाने की ट्रेनिंग देने के लिए स्कूल भी खोले गए हैं।

SubQuestion No : 21

Q.21 गद्यांश के रिक्त स्थान (1) के लिए सर्वाधिक उपयुक्त शब्द होगा-

- Ans
- 1. कठिन
 - 2. सरल
 - 3. सहज
 - 4. आवश्यक

Question ID : 65497832652
Status : Not Answered
Chosen Option : --

Comprehension:

दिए गए गद्यांश में से कुछ शब्द हटा दिए गए हैं। संबंधित प्रश्नों में प्रत्येक सख्या के लिए सबसे उपयुक्त विकल्प का चयन करें।

नारियल खाना जितना अच्छा लगता है, उतना ही (1) _____ होता है इसे पेड़ से तोड़ना। नारियल के ऊँचे सीधे खड़े पेड़ तक पहुँचना (2) _____ खीर है। जान जोखिम में डालकर नारियल तोड़ने का काम करने वालों को बदले में (3) _____ भी बहुत कम मिलती है। इतनी (4) _____ से गिरकर कई लोग जान भी गँवा चुके हैं। केरल में अब लोग बदर पाल रहे हैं। उन्हें नारियल तोड़ने के लिए (5) _____ दिया जा रहा है। हमारे देश में बदरो की कमी नहीं है। उन्हें नारियल तोड़कर लाने की ट्रेनिंग देने के लिए स्कूल भी खोले गए हैं।

SubQuestion No : 22

Q.22 गद्यांश के रिक्त स्थान (2) के लिए सर्वाधिक उपयुक्त शब्द होगा-

- Ans
- 1. सीधी
 - 2. टेढ़ी
 - 3. उल्टी
 - 4. लम्बी

Question ID : 65497832653

Status : Not Answered

Chosen Option : --

Comprehension:

दिए गए गद्यांश में से कुछ शब्द हटा दिए गए हैं। संबंधित प्रश्नों में प्रत्येक सख्या के लिए सबसे उपयुक्त विकल्प का चयन करें।

नारियल खाना जितना अच्छा लगता है, उतना ही (1) _____ होता है इसे पेड़ से तोड़ना। नारियल के ऊँचे सीधे खड़े पेड़ तक पहुँचना (2) _____ खीर है। जान जोखिम में डालकर नारियल तोड़ने का काम करने वालों को बदले में (3) _____ भी बहुत कम मिलती है। इतनी (4) _____ से गिरकर कई लोग जान भी गँवा चुके हैं। केरल में अब लोग बदर पाल रहे हैं। उन्हें नारियल तोड़ने के लिए (5) _____ दिया जा रहा है। हमारे देश में बदरो की कमी नहीं है। उन्हें नारियल तोड़कर लाने की ट्रेनिंग देने के लिए स्कूल भी खोले गए हैं।

SubQuestion No : 23

Q.23 गद्यांश के रिक्त स्थान (3) के लिए सर्वाधिक उपयुक्त शब्द होगा-

- Ans
- 1. नारियल
 - 2. मज़दूरी
 - 3. उन्नति
 - 4. प्रशंसा

Question ID : 65497832654

Status : Not Answered

Chosen Option : --

Comprehension:

दिए गए गद्यांश में से कुछ शब्द हटा दिए गए हैं। सबधित प्रश्नों में प्रत्येक सख्या के लिए सबसे उपयुक्त विकल्प का चयन करें।

नारियल खाना जितना अच्छा लगता है, उतना ही (1) _____ होता है इसे पेड़ से तोड़ना। नारियल के ऊँचे सीधे खड़े पेड़ तक पहुँचना (2) _____ खीर है। जान जोखिम में डालकर नारियल तोड़ने का काम करने वालों को बदले में (3) _____ भी बहुत कम मिलती है। इतनी (4) _____ से गिरकर कई लोग जान भी गँवा चुके हैं। केरल में अब लोग बदर पाल रहे हैं। उन्हें नारियल तोड़ने के लिए (5) _____ दिया जा रहा है। हमारे देश में बदरो की कमी नहीं है। उन्हें नारियल तोड़कर लाने की ट्रेनिंग देने के लिए स्कूल भी खोले गए हैं।

SubQuestion No : 24

Q.24 गद्यांश के रिक्त स्थान (4) के लिए सर्वाधिक उपयुक्त शब्द होगा-

- Ans
- 1. लम्बाई
 - 2. ऊँचाई
 - 3. नीचे
 - 4. गहराई

Question ID : 65497832655

Status : Not Answered

Chosen Option : --

Comprehension:

दिए गए गद्यांश में से कुछ शब्द हटा दिए गए हैं। सबधित प्रश्नों में प्रत्येक सख्या के लिए सबसे उपयुक्त विकल्प का चयन करें।

नारियल खाना जितना अच्छा लगता है, उतना ही (1) _____ होता है इसे पेड़ से तोड़ना। नारियल के ऊँचे सीधे खड़े पेड़ तक पहुँचना (2) _____ खीर है। जान जोखिम में डालकर नारियल तोड़ने का काम करने वालों को बदले में (3) _____ भी बहुत कम मिलती है। इतनी (4) _____ से गिरकर कई लोग जान भी गँवा चुके हैं। केरल में अब लोग बदर पाल रहे हैं। उन्हें नारियल तोड़ने के लिए (5) _____ दिया जा रहा है। हमारे देश में बदरो की कमी नहीं है। उन्हें नारियल तोड़कर लाने की ट्रेनिंग देने के लिए स्कूल भी खोले गए हैं।

SubQuestion No : 25

Q.25 गद्यांश के रिक्त स्थान (5) के लिए सर्वाधिक उपयुक्त शब्द होगा-

- Ans
- 1. विकास
 - 2. प्रशिक्षण
 - 3. कौशल
 - 4. अनुरक्षण

Question ID : 65497832656

Status : Not Answered

Chosen Option : --

Exam Date	13/12/2021
Exam Time :	12:30 PM - 2:00 PM
Subject	Constable GD 2021

Section : Part A General Intelligence and Reasoning

Q.1 Select the option that is NOT embedded in the given figure (rotation is NOT allowed).



Ans

✓ 1.



✗ 2.



✗ 3.



✗ 4.



Question ID : 65497833058

Status : Answered

Chosen Option : 1

Q.2 Select the correct mirror image of the given combination when the mirror is placed at PQ as shown.

EMPHASIS | P
Q

Ans

✗ 1.

EMPHASIS

✗ 2.

EMPHASIS

✓ 3.

SI2AHQME

✗ 4.

EMPHASIS

Question ID : 65497833048

Status : Answered

Chosen Option : 3

Q.3 Which two numbers should be interchanged to make the given equation correct?

$$48 + 37 \times 5 - 36 \div 12 = 274$$

- Ans 1. 37 and 48
 2. 12 and 5
 3. 12 and 36
 4. 48 and 12

Question ID : 65497833056
 Status : Answered
 Chosen Option : 1

Q.4 In a certain code language, the word 'PARTH' is coded as 'TEVXL'. What will be the word for code 'XVEHI' in that language?

- Ans 1. TRADE
 2. BZLIM
 3. TARDE
 4. BZILM

Question ID : 65497833049
 Status : Answered
 Chosen Option : 4

Q.5 Select the correct option that indicates the arrangement of the given words in the order in which they appear in an English dictionary.

1. Trimmer
2. Tripled
3. Trinity
4. Trinket
5. Triumph

- Ans 1. 3, 1, 2, 5, 4
 2. 1, 3, 4, 2, 5
 3. 2, 3, 1, 5, 4
 4. 1, 4, 3, 2, 5

Question ID : 65497833041
 Status : Answered
 Chosen Option : 2

Q.6 'Axe' is related to 'Woodcutting' in the same way as 'Sieve' is related to '_____'.
 Ans 1. Flame
 2. Filter
 3. Grind
 4. Hold

Question ID : 65497833060
 Status : Answered
 Chosen Option : 2

Q.7 In a certain code language, 'SLEEPER' is written as 'UKGDRDT'. How will 'BEGUMPET' be written in that language?

- Ans
- 1. DOITDOGS
 - 2. DOITDOOG
 - 3. DDITOOGS
 - 4. DDITDOGO

Question ID : 65497833039
 Status : Answered
 Chosen Option : 3

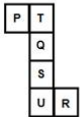
Q.8 Select the combination of letters that when sequentially placed in the blanks of the given series will complete the series.

U _ _ Q G _ X P _ _ UX _ _ G

- Ans
- 1. XPUQGQPQ
 - 2. XQPGUPQ
 - 3. XPQUQGP
 - 4. QPXUGQP

Question ID : 65497833042
 Status : Answered
 Chosen Option : 1

Q.9 A cube is made by folding the given sheet. In the cube so formed, which of the following pairs of letters will be on opposite sides?



- Ans
- 1. U and T
 - 2. P and Q
 - 3. S and R
 - 4. Q and U

Question ID : 65497833057
 Status : Answered
 Chosen Option : 4

Q.10 Four letter-clusters have been given, out of which three are alike in some manner and one is different. Select the letter-cluster that is different.

- Ans
- 1. MDNK
 - 2. GBTM
 - 3. SFHJ
 - 4. JLQC

Question ID : 65497833045
 Status : Answered
 Chosen Option : 3

Q.11 Pooja is the only sister of Gulab. Keshav and Sumer are brothers. Gulab is the only nephew of Keshav. Sumer is the father-in-law of Sonu (male). How is Pooja related to Sonu?

- Ans
- 1. Mother
 - 2. Wife
 - 3. Sister
 - 4. Sister-in-law

Question ID : 65497833040
Status : Answered
Chosen Option : 2

Q.12 Select the number from among the given options that can replace the question mark (?) in the following series.

27, 32, 42, 57, 77, ?

- Ans
- 1. 124
 - 2. 102
 - 3. 97
 - 4. 105

Question ID : 65497833043
Status : Answered
Chosen Option : 2

Q.13 Select the option that is related to the third term in the same way as the second term is related to the first term.

BACK : ZCAM :: REAR : ?

- Ans
- 1. YPGT
 - 2. TYPG
 - 3. PYGT
 - 4. PGYT

Question ID : 65497833038
Status : Answered
Chosen Option : 4

Q.14 Six friends A, B, C, D, E and F are sitting in two lines, facing the north. Three persons are sitting in each line. F is sitting in the middle. C is just behind B. D is to the immediate right of E. B is to the immediate left of F. Which three persons are sitting in the same line?

- Ans
- 1. C, D and E
 - 2. B, C and D
 - 3. A, F and C
 - 4. A, B and D

Question ID : 65497833061
Status : Answered
Chosen Option : 1

Q.15 Which term of the series 195, 188, 181, is its first negative term?

- Ans 1. 29
 2. 32
 3. 35
 4. 42

Question ID : 65497833052
 Status : Answered
 Chosen Option : 2

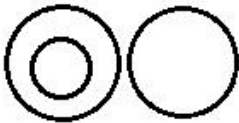
Q.16 Select the number from among the given options that can replace the question mark (?) in the following series.

17, 18, 14, 23, 7, 32, -4, ?

- Ans 1. 25
 2. -45
 3. 45
 4. -25

Question ID : 65497833047
 Status : Answered
 Chosen Option : 3

Q.17 Select the set of words best represented by the given Venn diagram.



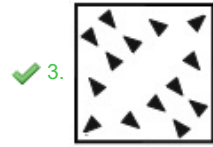
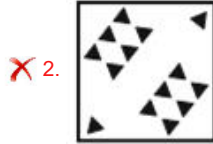
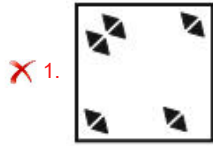
- Ans 1. Jasmine, Flowers, Eggs
 2. Water, Liquid, Juice
 3. Roses, Lilies, Flowers
 4. Maize, Rice, Food

Question ID : 65497833062
 Status : Answered
 Chosen Option : 1

Q.18 The sequence of folding a piece of paper and the manner in which the folded paper has been cut is shown in the following figures. How would this paper look when unfolded?



Ans



Question ID : 65497833053
 Status : Answered
 Chosen Option : 3

Q.19 Select the option that is related to the fourth number in the same way as the first number is related to the second number and the fifth number is related to the sixth number.

$$72 : 6 :: ? : 7 :: 128 : 8$$

- Ans
- 1. 95
 - 2. 101
 - 3. 98
 - 4. 90

Question ID : 65497833055
 Status : Answered
 Chosen Option : 3

Q.20 Select the figure from among the given options that can replace the question mark (?) in the following series.



Ans

- 1.
- 2.
- 3.
- 4.

Question ID : 65497833044
 Status : Answered
 Chosen Option : 2

Q.21 Select the letter-cluster from among the given options that can replace the question mark (?) in the following series.

NX, LZ, JB, ?, FF, DH

- Ans
- 1. HC
 - 2. GC
 - 3. HD
 - 4. ED

Question ID : 65497833059
 Status : Answered
 Chosen Option : 3

Q.22 Read the given statements and conclusions carefully. Assuming that the information given in the statements is true, even if it appears to be at variance with commonly known facts, decide which of the given conclusions logically follow(s) from the statements.

Statements:

- I. Some trolley-bags are backpacks.
- II. Some backpacks are suitcases.
- III. All suitcases are bags.

Conclusions:

- I. At least some backpacks are bags.
- II. some bags are suitcases.

- Ans
- 1. Only conclusion II follows.
 - 2. Neither conclusion I nor II follows.
 - 3. Both, conclusion I and II follow.
 - 4. Only conclusion I follows.

Question ID : 65497833050
 Status : Answered
 Chosen Option : 3

Q.23 Eight persons A, B, C, D, E, F, G and H are sitting clockwise around a circular table in the same sequence at equal distances between them. All are facing the centre of the table. If E is sitting in the north-west, then in which direction is G facing?

- Ans 1. South-west
 2. South-east
 3. North-west
 4. North

Question ID : 65497833054
Status : Answered
Chosen Option : 1

Q.24 In a certain code language, 'SLIDE' is coded as '382418822'. How will 'TREND' be coded in that language?

- Ans 1. 463028282
 2. 428282036
 3. 430622828
 4. 403622288

Question ID : 65497833046
Status : Answered
Chosen Option : 4

Q.25 Study the given pattern carefully and select the number that can replace the question mark (?) in it.

9 7 12
12 24 ?
15 25 37

- Ans 1. 42
 2. 35
 3. 36
 4. 40

Question ID : 65497833051
Status : Answered
Chosen Option : 2

Section : Part B General Knowledge and General Awareness

Q.1 In which of the following states is India's largest saline wetland, the Sambhar Lake, located?

- Ans 1. Karnataka
 2. Maharashtra
 3. Tamil Nadu
 4. Rajasthan

Question ID : 65497833064
Status : Answered
Chosen Option : 4

Q.2 In which of the following Indus Valley Civilisation sites was the 'Great Bath' discovered?

- Ans
- 1. Lothal
 - 2. Kalibangan
 - 3. Mohenjo-daro
 - 4. Banawali

Question ID : 65497833065
Status : Answered
Chosen Option : 3

Q.3 Afghan cricketer Rashid Khan played for _____ in the Indian Premier League (IPL) 2021.

- Ans
- 1. Sunrisers Hyderabad
 - 2. Punjab Kings
 - 3. Delhi Capitals
 - 4. Rajasthan Royals

Question ID : 65497833086
Status : Answered
Chosen Option : 1

Q.4 Which of the following awards is given by World Economic Forum to artists who have used their art to improve the state of the world?

- Ans
- 1. Oscar Award
 - 2. Grammy Award
 - 3. Crystal Award
 - 4. Filmfare Award

Question ID : 65497833075
Status : Answered
Chosen Option : 3

Q.5 The Census of India 2021 is the _____ decennial Census of India since 1872, when the first systematic census was conducted throughout the country as per uniform pattern.

- Ans
- 1. 15th
 - 2. 13th
 - 3. 14th
 - 4. 16th

Question ID : 65497833084
Status : Answered
Chosen Option : 1

Q.6 Which of the following has seeds with two cotyledons?

- Ans
- 1. Maize
 - 2. Grass
 - 3. Rose
 - 4. Rice

Question ID : 65497833081
Status : Answered
Chosen Option : 3

Q.7 Which of the following is the total value of goods and services produced by a country during a financial year?

- Ans 1. Disposable income
 2. National income
 3. Private income
 4. Personal income

Question ID : 65497833069
 Status : Answered
 Chosen Option : 2

Q.8 The Government of India appointed _____ as the country's G20 Sherpa in September 2021.

- Ans 1. Suresh Prabhu
 2. Shaktikanta Das
 3. Montek Singh Ahluwalia
 4. Piyush Goyal

Question ID : 65497833087
 Status : Answered
 Chosen Option : 4

Q.9 Which of the following nations chaired the G-20 Foreign Ministers' Extraordinary Meeting, which was held in the virtual mode, on 3 September 2020?

- Ans 1. Saudi Arabia
 2. Argentina
 3. Mexico
 4. India

Question ID : 65497833068
 Status : Not Answered
 Chosen Option : --

Q.10 The 'Stand Up India' Scheme facilitates bank loans between ₹ _____ to at least one Scheduled Caste (SC) or Scheduled Tribe (ST) borrower and at least one woman per bank branch for setting up a greenfield enterprise.

- Ans 1. 5 lakhs and 10 lakhs
 2. 10 lakhs and 1 crore
 3. 1 lakh and 5 lakhs
 4. 10 thousand and 1 lakh

Question ID : 65497833077
 Status : Answered
 Chosen Option : 3

Q.11 Which of the following objects is visible only due to reflected light?

- Ans 1. a lit torch
 2. a burning candle
 3. the Moon
 4. Stars

Question ID : 65497833082
 Status : Answered
 Chosen Option : 4

Q.12 Which of the following chemicals is NOT used as a preservative to check the growth of microorganisms?

- Ans
- 1. Sodium metabisulphite
 - 2. Sodium hydrogen carbonate
 - 3. Benzoic acid
 - 4. Sodium benzoate

Question ID : 65497833070
Status : Answered
Chosen Option : 2

Q.13 In which of the following years the Mughal Emperor Shah Alam II appointed the English East India Company as the Diwan of the province of Bengal?

- Ans
- 1. 1865
 - 2. 1665
 - 3. 1735
 - 4. 1765

Question ID : 65497833066
Status : Answered
Chosen Option : 4

Q.14 Which of the following states was the first to try out modern methods of farming during the Green Revolution in India?

- Ans
- 1. Tamil Nadu
 - 2. Punjab
 - 3. Rajasthan
 - 4. Madhya Pradesh

Question ID : 65497833079
Status : Answered
Chosen Option : 2

Q.15 Which of the following Indian football players is nicknamed as 'Sikkimese Sniper'?

- Ans
- 1. Sandesh Jhingan
 - 2. Bhaichung Bhutia
 - 3. Subrata Pal
 - 4. Sunil Chhetri

Question ID : 65497833076
Status : Answered
Chosen Option : 2

Q.16 DRDO successfully conducted the final trial of which anti-tank guided missile in Pokhran range in October 2020?

- Ans
- 1. Amogha
 - 2. Dhruvastra
 - 3. Nag
 - 4. Jasmine

Question ID : 65497833072
Status : Not Answered
Chosen Option : --

Q.17 Rani Durgawati, who ruled over on behalf of her five-year-old son Bir Narain, belonged to which of the following tribes?

- Ans 1. Korku
 2. Gonds
 3. Baiga
 4. Madia

Question ID : 65497833071
Status : Answered
Chosen Option : 2

Q.18 Who among the following decides whether a particular bill is a Money Bill or not?

- Ans 1. Speaker of the Lok Sabha
 2. Finance Minister of India
 3. Attorney-General of India
 4. Comptroller and Auditor-General of India

Question ID : 65497833067
Status : Answered
Chosen Option : 1

Q.19 As per the Natya Shastra, idiophones are called _____.

- Ans 1. Ghan Vadya
 2. Sushir Vadya
 3. Avanaddha Vadya
 4. Tat Vadya

Question ID : 65497833080
Status : Answered
Chosen Option : 1

Q.20 The Indian Forest (Amendment) Bill, 2017 excluded _____ from the definition of 'tree'.

- Ans 1. palm
 2. cane
 3. brush-wood
 4. bamboo

Question ID : 65497833085
Status : Answered
Chosen Option : 1

Q.21 Shifting cultivation is also known as:

- Ans 1. rumble and tumble
 2. slash and burn
 3. shift and burn
 4. stash and burn

Question ID : 65497833074
Status : Answered
Chosen Option : 1

Q.22 The Nobel Prize in _____ 2020 was awarded jointly to Emmanuelle Charpentier and Jennifer A. Doudna.

- Ans 1. Medicine
 2. Chemistry
 3. Literature
 4. Physics

Question ID : 65497833083
 Status : Not Answered
 Chosen Option : --

Q.23 Which of the following statements is INCORRECT?

- Ans 1. Arabic was the language of administration under the Delhi Sultans.
 2. Coins minted in Delhi were called 'Dehliwal'.
 3. Qutb al-Din Aibak ruled over Delhi from 1206 - 1210.
 4. Delhi first became the capital of a kingdom under the Tomara Rajputs.

Question ID : 65497833078
 Status : Answered
 Chosen Option : 2

Q.24 How many sportspersons won the Rajiv Gandhi Khel Ratna Award in 2020?

- Ans 1. Five
 2. Seven
 3. One
 4. Two

Question ID : 65497833063
 Status : Answered
 Chosen Option : 2

Q.25 अर्जुन तपस्या, दुनिया की सबसे बड़ी नक्काशीदार मूर्तियों में से एक है जो _____ में स्थित है।

- Ans 1. सतारा, महाराष्ट्र
 2. वायनाड, केरल
 3. महाबलीपुरम, तमिलनाडु
 4. जोधपुर, राजस्थान

Question ID : 65497833073
 Status : Not Answered
 Chosen Option : --

Section : Part C Elementary Mathematics

Q.1 A sum of money lent out at simple interest amounts to ₹715 after 3 years and to ₹990 after a further period of 5 years.
 Find the sum.

- Ans 1. ₹550
 2. ₹600
 3. ₹590
 4. ₹625

Question ID : 65497833101
 Status : Not Answered
 Chosen Option : --

Q.2 The ratio of alcohol and water in a solution is 4 : 3. In 350 mL of this solution, how much water (in mL) should be added to get a solution containing alcohol and water in the ratio 5 : 6?

- Ans
- 1. 120
 - 2. 80
 - 3. 100
 - 4. 90

Question ID : 65497833106
Status : Answered
Chosen Option : 4

Q.3 Find the value of x in the following equation.

$$45\% \text{ of } 360 + 30\% \text{ of } 400 = 25\% \text{ of } x$$

- Ans
- 1. 1112
 - 2. 1200
 - 3. 1128
 - 4. 1180

Question ID : 65497833110
Status : Not Answered
Chosen Option : --

Q.4 If HCF of 341, 434 and 620 is x , then the value of x lies between:

- Ans
- 1. 40 and 45
 - 2. 25 and 30
 - 3. 30 and 35
 - 4. 35 and 40

Question ID : 65497833098
Status : Not Answered
Chosen Option : --

Q.5 The value of $96 - 4 \text{ of } (18 - 13) + 4 \times 7$ is:

- Ans
- 1. -36
 - 2. 560
 - 3. 104
 - 4. 36

Question ID : 65497833092
Status : Answered
Chosen Option : 3

Q.6 A square of side $6\sqrt{2}$ cm is inscribed in a circle. What is the area (in cm^2) of the circle excluding the square (correct to the nearest integer)? (Use $\pi = \frac{22}{7}$)

- Ans**
- 1. 39
 - 2. 41
 - 3. 27
 - 4. 47

Question ID : **65497833089**
 Status : **Not Answered**
 Chosen Option : --

Q.7 The value of $\frac{3 \text{ of } 5\frac{1}{2} + 6 \div 5 - 2 \text{ of } 3 \div 4}{1 + \frac{3}{1+4} \text{ of } 5 - 3\frac{1}{3} \text{ of } 2 \div 5}$ is :

- Ans**
- 1. $\frac{243}{175}$
 - 2. $\frac{302}{105}$
 - 3. $\frac{247}{205}$
 - 4. $\frac{257}{302}$

Question ID : **65497833095**
 Status : **Answered**
 Chosen Option : 1

Q.8 The average score of 35 students in a class test is 46. Later, it was found that at two places 23 was read as 33, and at one place 36 was read as 30. What is the actual average score of the class?

- Ans**
- 1. 45.3
 - 2. 45.6
 - 3. 42.6
 - 4. 44.8

Question ID : **65497833108**
 Status : **Not Answered**
 Chosen Option : --

Q.9 A shopkeeper marks the marked price of an article 30% more than its real price and offers 10% discount. What is the gain percentage?

- Ans**
- 1. 15%
 - 2. 17%
 - 3. 18%
 - 4. 20%

Question ID : **65497833097**
 Status : **Answered**
 Chosen Option : 2

Q.10 Reshma spends 84% of her income. If her income increases by 30% and savings increase by 40%, then by what percentage will her expenditure increase (correct to one decimal place)?

- Ans**
- 1. 28.8%
 - 2. 27.2%
 - 3. 29.2%
 - 4. 28.1%

Question ID : 65497833099

Status : Not Answered

Chosen Option : --

Q.11 The simple interest on a certain sum at 6.4% p.a. for $3\frac{3}{4}$ years is ₹1,896. What will be the amount (in ₹) of the same sum at the same rate in $6\frac{1}{4}$ years?

- Ans**
- 1. 11,000
 - 2. 11,080
 - 3. 11,050
 - 4. 11,060

Question ID : 65497833107

Status : Not Answered

Chosen Option : --

Q.12 The average of 19 numbers is 58. The average of the first 12 numbers is 63.6 and the average of the last 8 numbers is 55.1. If the 12th number from the beginning is excluded, then what is the average of the remaining numbers?

- Ans**
- 1. $55\frac{5}{9}$
 - 2. $61\frac{1}{3}$
 - 3. $53\frac{2}{3}$
 - 4. $54\frac{4}{9}$

Question ID : 65497833105

Status : Not Answered

Chosen Option : --

Q.13 What is the volume of the largest right circular cone that can be cut out of a cube of edge 12 cm (correct to two decimal places)?

- Ans**
- 1. 282.30 cm³
 - 2. 452.57 cm³
 - 3. 395.65 cm³
 - 4. 290.90 cm³

Question ID : 65497833102

Status : Not Answered

Chosen Option : --

Q.14 If an alloy is to contain copper and zinc in the ratio of 5 : 4, how much quantity of copper is required to be melted with 20 kg of zinc?

- Ans**
- 1. 10 kg
 - 2. 12 kg
 - 3. 15 kg
 - 4. 25 kg

Question ID : 65497833100
Status : Answered
Chosen Option : 4

Q.15 The price of jeans was slashed from ₹1,250 to ₹1,150 by a shopkeeper. What is the discount percentage allowed by the shopkeeper?

- Ans**
- 1. 7.25%
 - 2. 10%
 - 3. 7.5%
 - 4. 8%

Question ID : 65497833109
Status : Answered
Chosen Option : 4

Q.16 Mr. Jugal Kishore invested a certain sum at simple interest for 4 years such that $\frac{2}{7}$ of the sum was invested at 7% p.a., $\frac{1}{5}$ of the sum at 9% p.a. and the remaining sum at 11% p.a. If the total interest received is ₹11,880, then the total sum invested is:

- Ans**
- 1. ₹30,000
 - 2. ₹35,000
 - 3. ₹38,000
 - 4. ₹32,000

Question ID : 65497833091
Status : Not Answered
Chosen Option : --

Q.17 If a, b and c are positive numbers such that $(a^2 + b^2) : (b^2 + c^2) : (c^2 + a^2) = 34 : 61 : 45$, then $a + b : b + c : c + a =$

- Ans**
- 1. 8 : 11 : 9
 - 2. 8 : 9 : 11
 - 3. 9 : 8 : 11
 - 4. 9 : 11 : 8

Question ID : 65497833088
Status : Answered
Chosen Option : 1

Q.18 Shyamlal marks his goods at 35% above the cost price and allows a discount of 5%. What is his percentage gain?

- Ans**
- 1. 28.50%
 - 2. 28.25%
 - 3. 28.75%
 - 4. 28%

Question ID : 65497833093

Status : Answered

Chosen Option : 2

Q.19 When the LCM of 34, 38, 85 and 95 is divided by the average of these numbers, the remainder is:

- Ans**
- 1. 19
 - 2. 23
 - 3. 17
 - 4. 21

Question ID : 65497833104

Status : Not Answered

Chosen Option : --

Q.20 The speed of a bus increases by 4 km after every one hour. If the distance travelled in the first one hour was 55 km, then what was the total distance travelled in 13 hours?

- Ans**
- 1. 1050 km
 - 2. 1000 km
 - 3. 1100 km
 - 4. 1027 km

Question ID : 65497833096

Status : Answered

Chosen Option : 4

Q.21 By selling an article for ₹375, a man gains an amount such that the profit percentage is equal to cost price. The cost price of the article is:

- Ans**
- 1. ₹150
 - 2. ₹250
 - 3. ₹200
 - 4. ₹160

Question ID : 65497833090

Status : Not Answered

Chosen Option : --

Q.22 A tank is filled in 3 hours by three pipes A, B and C. Pipe A is 6 times as fast as pipe C and 2 times as fast as pipe B. How many hours will pipes B and C take to fill the tank?

Ans

1. $7\frac{4}{5}$

2. 7

3. $7\frac{1}{4}$

4. $7\frac{1}{2}$

Question ID : 65497833111

Status : Not Answered

Chosen Option : --

Q.23 A can complete a work in 8 days. B can complete it in 12 days. With the assistance of C, they completed the work in 4 days. In how many days can C alone complete the same work?

Ans

1. 24 Days

2. 6 Days

3. 18 Days

4. 4 Days

Question ID : 65497833094

Status : Answered

Chosen Option : 1

Q.24 A man takes 2 hours to swim 25 km downstream. He swims 19 km upstream in the same time. What is the speed (in km/h) of the current?

Ans

1. 1.65

2. 2

3. 1.8

4. 1.5

Question ID : 65497833112

Status : Not Answered

Chosen Option : --

Q.25 Arun sold two articles for ₹631.80 each. On one he gained 17% and on the other he lost 19%. His loss percentage (correct to one decimal place) in the entire transaction is:

Ans

1. 5.4%

2. 4.8%

3. 5.2%

4. 4.3%

Question ID : 65497833103

Status : Answered

Chosen Option : 3

Q.1 Select the option that can be used as a one-word substitute for the given group of words.

A plan or route to be followed on a journey

- Ans
- 1. Travel
 - 2. Arrangement
 - 3. Itinerary
 - 4. Tour

Question ID : 65497833118
Status : Answered
Chosen Option : 3

Q.2 Select the most appropriate option to fill in the blank.

The guests were amazed at the _____ spread of food.

- Ans
- 1. lucky
 - 2. lavish
 - 3. lonely
 - 4. light

Question ID : 65497833128
Status : Answered
Chosen Option : 2

Q.3 Select the option that will improve the underlined part of the sentence. In case no improvement is needed, select 'No improvement required'.

We were took on the vineyards for a tour.

- Ans
- 1. take in
 - 2. taken on
 - 3. taken to
 - 4. No improvement required

Question ID : 65497833116
Status : Answered
Chosen Option : 3

Q.4 Select the option that will improve the underlined part of the given sentence. In case no improvement is needed, select 'No improvement required'.

Although he got the message he rushed home.

- Ans
- 1. No improvement required
 - 2. No sooner
 - 3. As soon as
 - 4. Hardly

Question ID : 65497833131
Status : Answered
Chosen Option : 3

Q.5 Select the option that can be used as a one-word substitute for the given group of words.

A type of substance or material that burns very quickly

- Ans 1. Incredible
 2. Inflammable
 3. Invisible
 4. Indelible

Question ID : 65497833126
 Status : Answered
 Chosen Option : 2

Q.6 Select the most appropriate ANTONYM of the given word.

Betterment

- Ans 1. Progress
 2. Prosperity
 3. Deterioration
 4. Advancement

Question ID : 65497833120
 Status : Answered
 Chosen Option : 3

Q.7 Select the most appropriate meaning of the given idiom.

As thick as two short planks

- Ans 1. Extremely stupid
 2. Extremely angry
 3. Extremely ugly
 4. Extremely intelligent

Question ID : 65497833123
 Status : Answered
 Chosen Option : 4

Q.8 Select the most appropriate meaning of the given idiom.

To beat the clock

- Ans 1. To be very angry for being late
 2. To brag about oneself
 3. To perform a task within the time limit
 4. To race against time

Question ID : 65497833127
 Status : Answered
 Chosen Option : 3

Q.9 Select the option that can be used as a one-word substitute for the given group of words.

A person who never drinks alcohol.

- Ans
- 1. Alcoholic
 - 2. Abandoner
 - 3. Noctambulist
 - 4. Teetotaler

Question ID : 65497833121
Status : Answered
Chosen Option : 4

Q.10 Parts of the given sentence have been given as options. One of them contains a grammatical error. Select the option that has the error.

I could not went for my sister's wedding in Rajasthan as I had my final examination at that time.

- Ans
- 1. at that time
 - 2. as I had
 - 3. could not went
 - 4. sister's wedding in Rajasthan

Question ID : 65497833119
Status : Answered
Chosen Option : 3

Q.11 Select the most appropriate synonym of the given word.

Sturdy

- Ans
- 1. Delicate
 - 2. Unhealthy
 - 3. Tough
 - 4. Active

Question ID : 65497833115
Status : Answered
Chosen Option : 2

Q.12 Select the most appropriate option to fill in the blank.

It looks as if it might rain tonight as the sky is _____.

- Ans
- 1. overjoyed
 - 2. overdue
 - 3. oversized
 - 4. overcast

Question ID : 65497833130
Status : Answered
Chosen Option : 4

Q.13 Select the INCORRECTLY spelt word.

- Ans 1. Mutter
 2. Hotal
 3. Guard
 4. Strain

Question ID : 65497833129
 Status : Answered
 Chosen Option : 2

Q.14 Select the INCORRECTLY spelt word.

- Ans 1. Occasion
 2. Offering
 3. Occurence
 4. Auction

Question ID : 65497833122
 Status : Answered
 Chosen Option : 3

Q.15 Select the most appropriate option to fill in the blank.

Tukaram said that scaling every mountain peak has its own _____.

- Ans 1. checks
 2. contests
 3. burdens
 4. challenges

Question ID : 65497833113
 Status : Answered
 Chosen Option : 4

Q.16 The following sentence has been split into four segments. Identify the segment that contains a grammatical error.

If I will meet / my friend today, / I shall give / him this book.

- Ans 1. him this book
 2. I shall give
 3. my friend today
 4. If I will meet

Question ID : 65497833124
 Status : Answered
 Chosen Option : 4

Q.17 Select the most appropriate synonym of the given word.

Steady

- Ans 1. Shaky
 2. Soft
 3. Flexible
 4. Stable

Question ID : 65497833125
 Status : Answered
 Chosen Option : 4

Q.18 Select the option that will improve the underlined part of the given sentence. In case no improvement is needed, select 'No improvement required'.

The students felt a shame by their bad behaviour.

- Ans
- 1. feel shame on
 - 2. felt ashamed by
 - 3. No improvement required
 - 4. felt ashamed for

Question ID : 65497833117
Status : Answered
Chosen Option : 4

Q.19 The following sentence has been split into four segments. Identify the segment that contains a grammatical error.

The Nature Channel / gives a lots of / interesting information / on wildlife.

- Ans
- 1. interesting information
 - 2. The Nature Channel
 - 3. on wildlife
 - 4. gives a lots of

Question ID : 65497833114
Status : Answered
Chosen Option : 4

Q.20 Select the most appropriate ANTONYM of the given word.

Volatile

- Ans
- 1. Certain
 - 2. Subtle
 - 3. Erratic
 - 4. Flighty

Question ID : 65497833132
Status : Answered
Chosen Option : 2

Comprehension:

In the following passage, some words have been deleted. Read the passage carefully and select the most appropriate option to fill in each blank.

The pandemic (1)_____ created a very difficult situation (2)_____ the migrant workers. They were forced to (3)_____ long distances (4)_____ foot to reach their native places. On the way, several people suffered (5)_____ and died too.

SubQuestion No : 21

Q.21 Select the most appropriate option to fill in blank number 1.

- Ans
- 1. has
 - 2. would
 - 3. may
 - 4. is

Question ID : 65497833134
Status : Answered
Chosen Option : 1

Comprehension:

In the following passage, some words have been deleted. Read the passage carefully and select the most appropriate option to fill in each blank.

The pandemic (1)_____ created a very difficult situation (2)_____ the migrant workers. They were forced to (3)_____ long distances (4)_____ foot to reach their native places. On the way, several people suffered (5)_____ and died too.

SubQuestion No : 22

Q.22 Select the most appropriate option to fill in blank number 2.

- Ans 1. for
 2. from
 3. at
 4. out of

Question ID : 65497833135
 Status : Answered
 Chosen Option : 1

Comprehension:

In the following passage, some words have been deleted. Read the passage carefully and select the most appropriate option to fill in each blank.

The pandemic (1)_____ created a very difficult situation (2)_____ the migrant workers. They were forced to (3)_____ long distances (4)_____ foot to reach their native places. On the way, several people suffered (5)_____ and died too.

SubQuestion No : 23

Q.23 Select the most appropriate option to fill in blank number 3.

- Ans 1. sleep
 2. stand
 3. travel
 4. rumble

Question ID : 65497833136
 Status : Answered
 Chosen Option : 3

Comprehension:

In the following passage, some words have been deleted. Read the passage carefully and select the most appropriate option to fill in each blank.

The pandemic (1)_____ created a very difficult situation (2)_____ the migrant workers. They were forced to (3)_____ long distances (4)_____ foot to reach their native places. On the way, several people suffered (5)_____ and died too.

SubQuestion No : 24

Q.24 Select the most appropriate option to fill in blank number 4.

- Ans 1. in
 2. to
 3. on
 4. from

Question ID : 65497833137
 Status : Answered
 Chosen Option : 3

Comprehension:

In the following passage, some words have been deleted. Read the passage carefully and select the most appropriate option to fill in each blank.

The pandemic (1)_____ created a very difficult situation (2)_____ the migrant workers. They were forced to (3)_____ long distances (4)_____ foot to reach their native places. On the way, several people suffered (5)_____ and died too.

SubQuestion No : 25

Q.25 Select the most appropriate option to fill in blank number 5.

- Ans 1. excitedly
 2. posthumously
 3. miserably
 4. haphazardly

Question ID : 65497833138
Status : Answered
Chosen Option : 4

Section : Part D Hindi

Q.1 दिये गये वाक्य में रेखांकित अश को प्रतिस्थापित करने के लिए सबसे उपयुक्त विकल्प का चयन करें।

गिरीश ने अपने पाँव से जूता निकाला।

- Ans 1. जूता खिसकाया।
 2. जूता उतारा।
 3. जूता हटाया।
 4. जूता गिराया।

Question ID : 65497833157
Status : Not Answered
Chosen Option : --

Q.2 दिए गए शब्द का विलोम चुनें।

ज्ञान

- Ans 1. विज्ञान
 2. अज्ञान
 3. सज्ञान
 4. अहकार

Question ID : 65497833144
Status : Not Answered
Chosen Option : --

Q.3 दिए गए शब्द का विलोम चुनें।

अथ

- Ans 1. शुरू
 2. इति
 3. उद्घाटन
 4. प्रारंभ

Question ID : 65497833147
Status : Not Answered
Chosen Option : --

Q.4 निम्नलिखित में से शुद्ध वर्तनी वाला शब्द कौन सा है?

- Ans
- 1. वक्षनीय
 - 2. वछनीय
 - 3. वाक्षनीय
 - 4. वाछनीय

Question ID : 65497833155
Status : Not Answered
Chosen Option : --

Q.5 दिये गये वाक्य में रेखांकित अश को प्रतिस्थापित करने के लिए सबसे उपयुक्त विकल्प का चयन करें।

यह विषय अत्यंत कठोर है।

- Ans
- 1. दुर्गम
 - 2. अगम
 - 3. कठिन
 - 4. कर्कश

Question ID : 65497833156
Status : Not Answered
Chosen Option : --

Q.6 दिये गये वाक्य के किस भाग में त्रुटि है?

आज विद्यालय के निरिक्षक आए हैं।

- Ans
- 1. आए हैं।
 - 2. आज
 - 3. विद्यालय के
 - 4. निरिक्षक

Question ID : 65497833152
Status : Not Answered
Chosen Option : --

Q.7 निम्नलिखित में से शुद्ध वर्तनी वाला शब्द कौन सा है?

- Ans
- 1. घनीष्ट
 - 2. घनिष्ट
 - 3. घनिष्ठ
 - 4. घनीष्ठ

Question ID : 65497833154
Status : Not Answered
Chosen Option : --

Q.8 दिए गए वाक्य में रेखांकित खंड को प्रतिस्थापित करने के लिए सबसे उपयुक्त विकल्प का चयन करें। यदि इसे प्रतिस्थापित करने की आवश्यकता नहीं है, तो विकल्प 'किसी बदलाव की आवश्यकता नहीं है' का चयन करें।

गंदे पानी की समुचित निकासी का प्रबंध न होने के कारण समस्त गाँव की जनसंख्या परेशान है।

- Ans
- 1. सारे गाँव की जनसंख्या परेशान है।
 - 2. किसी बदलाव की आवश्यकता नहीं है।
 - 3. समस्त गाँवों की जनसंख्या परेशान है।
 - 4. गाँव की समस्त जनसंख्या परेशान है।

Question ID : 65497833141

Status : Not Answered

Chosen Option : --

Q.9 दिये गये वाक्यांश के लिए एक शब्द दीजिये।

चोरी के लिए मकान की दीवार में किया गया बड़ा सा छेद

- Ans
- 1. स्तंभ
 - 2. संघ
 - 3. भेद्य
 - 4. दुर्भेद्य

Question ID : 65497833145

Status : Not Answered

Chosen Option : --

Q.10 दिए गए वाक्य का वह भाग ज्ञात करें जिसमें कोई त्रुटि है। यदि कोई त्रुटि नहीं है, तो 'कोई त्रुटि नहीं है' चुनें।

मुझे उसके विरुद्ध कुछ कहना या करना ही नहीं पड़ा।

- Ans
- 1. कोई त्रुटि नहीं है।
 - 2. मुझे उसके विरुद्ध
 - 3. ही नहीं पड़ा।
 - 4. कुछ कहना या करना

Question ID : 65497833143

Status : Not Answered

Chosen Option : --

Q.11 रिक्त स्थान की पूर्ति के लिए सबसे उपयुक्त शब्द का चयन करें।

मैं _____ नहीं जानता कि वह कहा गया।

- Ans
- 1. बिलकुल
 - 2. बिलकुल ही
 - 3. बिलकुल भी
 - 4. बिलकुल तो

Question ID : 65497833146

Status : Not Answered

Chosen Option : --

Q.12 दिये गये वाक्यांश के लिए एक शब्द दीजिये।

जिसके आर-पार दिखाई देता हो

- Ans
- 1. पारलौकिक
 - 2. पारदर्शी
 - 3. प्रत्यागत
 - 4. प्रकाश्य

Question ID : 65497833142
Status : Not Answered
Chosen Option : --

Q.13 'चक्षु' किसका पर्यायवाची है?

- Ans
- 1. आँख
 - 2. घोड़ा
 - 3. आकाश
 - 4. पक्षी

Question ID : 65497833153
Status : Not Answered
Chosen Option : --

Q.14 दिए गए वाक्य का वह भाग ज्ञात करें जिसमें कोई त्रुटि है। यदि कोई त्रुटि नहीं है, तो 'कोई त्रुटि नहीं है' विकल्प चुनें।

वह चार दिन का (1)\ आकस्मिक अवकाश पर (2)\ घर चला गया है। (3)\ कोई त्रुटि नहीं है (4)

- Ans
- 1. 4
 - 2. 1
 - 3. 3
 - 4. 2

Question ID : 65497833139
Status : Not Answered
Chosen Option : --

Q.15 रिक्त स्थान की पूर्ति के लिए सबसे उपयुक्त विकल्प का चयन करें।

मुझे बच्चे के स्वास्थ्य की _____ है।

- Ans
- 1. ग्लानि
 - 2. चिंता
 - 3. लज्जा
 - 4. शका

Question ID : 65497833151
Status : Not Answered
Chosen Option : --

Q.16 उस विकल्प का चयन कीजिए जिसमें निम्न मुहावरे का अर्थ दिया गया है।

आकाश के तारे तोड़ना-

- Ans 1. असभव काम करना
 2. काम तमाम करना
 3. आसमान छूने की कोशिश करना
 4. आसमान से तारे तोड़ने की कोशिश करना

Question ID : 65497833149
 Status : Not Answered
 Chosen Option : --

Q.17 रिक्त स्थान की पूर्ति के लिए सबसे उपयुक्त विकल्प का चयन करें।

खेलकूद में _____ अच्छी बात है।

- Ans 1. द्वेष
 2. क्रोध
 3. ईर्ष्या
 4. स्पर्द्धा

Question ID : 65497833150
 Status : Not Answered
 Chosen Option : --

Q.18 दिए गए शब्द के समानार्थी शब्द का चयन करें।

आश्रम

- Ans 1. विहार
 2. मकान
 3. इमारत
 4. भवन

Question ID : 65497833140
 Status : Not Answered
 Chosen Option : --

Q.19 उस विकल्प का चयन कीजिए जिसमें निम्न मुहावरे का अर्थ दिया गया है।

पर निकलना

- Ans 1. दूसरो का हो जाना
 2. घायल हो जाना
 3. स्वच्छद हो जाना
 4. पराधीन हो जाना

Question ID : 65497833148
 Status : Not Answered
 Chosen Option : --

Q.20 'जहाँ तक और जितना सभव हो' वाक्यांश के लिए उपयुक्त शब्द होगा-

- Ans 1. सभाव्य
 2. यथासभव
 3. सभावना
 4. सभवतः

Question ID : 65497833158

Status : Not Answered

Chosen Option : --

Comprehension:

दिए गए गद्यांश में से कुछ शब्द हटा दिए गए हैं। संबंधित प्रश्नों में, प्रत्येक सख्या के लिए सबसे उपयुक्त विकल्प का चयन करें-

मैं दिल्ली हूँ। सबसे पहले पाडवो ने मुझे (1) _____ और नाम रखा- इन्द्रप्रस्थ। वास्तव में मेरा सौन्दर्य इद्र की अलकापुरी के (2) _____ था। युग बदला। मैं गुप्त्वश के (3) _____ हुई। मुगलो के शासन में मेरा (4) _____ बहुत बढ़ा। अंग्रेजों को भी मैं ही सबसे अधिक (5) _____ हुई, इसीलिए वे कलकत्ता से अपने मुख्य कार्यालयों को मेरे यहाँ ही ले आये।

SubQuestion No : 21

Q.21 गद्यांश के रिक्त स्थान (1) के लिए सर्वाधिक उपयुक्त शब्द होगा-

- Ans 1. उठाया
 2. चलाया
 3. बनाया
 4. बसाया

Question ID : 65497833160

Status : Not Answered

Chosen Option : --

Comprehension:

दिए गए गद्यांश में से कुछ शब्द हटा दिए गए हैं। संबंधित प्रश्नों में, प्रत्येक सख्या के लिए सबसे उपयुक्त विकल्प का चयन करें-

मैं दिल्ली हूँ। सबसे पहले पाडवो ने मुझे (1) _____ और नाम रखा- इन्द्रप्रस्थ। वास्तव में मेरा सौन्दर्य इद्र की अलकापुरी के (2) _____ था। युग बदला। मैं गुप्त्वश के (3) _____ हुई। मुगलो के शासन में मेरा (4) _____ बहुत बढ़ा। अंग्रेजों को भी मैं ही सबसे अधिक (5) _____ हुई, इसीलिए वे कलकत्ता से अपने मुख्य कार्यालयों को मेरे यहाँ ही ले आये।

SubQuestion No : 22

Q.22 गद्यांश के रिक्त स्थान (2) के लिए सर्वाधिक उपयुक्त शब्द होगा-

- Ans 1. प्रकार
 2. समान
 3. सुन्दर
 4. अनुसार

Question ID : 65497833161

Status : Not Answered

Chosen Option : --

Comprehension:

दिए गए गद्यांश में से कुछ शब्द हटा दिए गए हैं। सबधित प्रश्नों में, प्रत्येक सख्या के लिए सबसे उपयुक्त विकल्प का चयन करें-

मैं दिल्ली हूँ। सबसे पहले पाडवो ने मुझे (1) _____ और नाम रखा- इन्द्रप्रस्थ। वास्तव में मेरा सौन्दर्य इद्र की अलकापुरी के (2) _____ था। युग बदला। मैं गुप्तश के (3) _____ हुई। मुगलो के शासन में मेरा (4) _____ बहुत बढ़ा। अंग्रेजो को भी मैं ही सबसे अधिक (5) _____ हुई, इसीलिए वे कलकत्ता से अपने मुख्य कार्यालयो को मेरे यहाँ ही ले आये।

SubQuestion No : 23

Q.23 गद्यांश के रिक्त स्थान (3) के लिए सर्वाधिक उपयुक्त शब्द होगा-

- Ans 1. अधीन
 2. जैसी
 3. अन्दर
 4. ऊपर

Question ID : 65497833162

Status : Not Answered

Chosen Option : --

Comprehension:

दिए गए गद्यांश में से कुछ शब्द हटा दिए गए हैं। सबधित प्रश्नों में, प्रत्येक सख्या के लिए सबसे उपयुक्त विकल्प का चयन करें-

मैं दिल्ली हूँ। सबसे पहले पाडवो ने मुझे (1) _____ और नाम रखा- इन्द्रप्रस्थ। वास्तव में मेरा सौन्दर्य इद्र की अलकापुरी के (2) _____ था। युग बदला। मैं गुप्तश के (3) _____ हुई। मुगलो के शासन में मेरा (4) _____ बहुत बढ़ा। अंग्रेजो को भी मैं ही सबसे अधिक (5) _____ हुई, इसीलिए वे कलकत्ता से अपने मुख्य कार्यालयो को मेरे यहाँ ही ले आये।

SubQuestion No : 24

Q.24 गद्यांश के रिक्त स्थान (4) के लिए सर्वाधिक उपयुक्त शब्द होगा-

- Ans 1. उजड़ना
 2. उत्सव
 3. सजना
 4. महत्त्व

Question ID : 65497833163

Status : Not Answered

Chosen Option : --

Comprehension:

दिए गए गद्यांश में से कुछ शब्द हटा दिए गए हैं। सबधित प्रश्नों में, प्रत्येक सख्या के लिए सबसे उपयुक्त विकल्प का चयन करें-

मैं दिल्ली हूँ। सबसे पहले पाडवो ने मुझे (1) _____ और नाम रखा- इन्द्रप्रस्थ। वास्तव में मेरा सौन्दर्य इद्र की अलकापुरी के (2) _____ था। युग बदला। मैं गुप्तश के (3) _____ हुई। मुगलो के शासन में मेरा (4) _____ बहुत बढ़ा। अंग्रेजो को भी मैं ही सबसे अधिक (5) _____ हुई, इसीलिए वे कलकत्ता से अपने मुख्य कार्यालयो को मेरे यहाँ ही ले आये।

SubQuestion No : 25

Q.25 गद्यांश के रिक्त स्थान (5) के लिए सर्वाधिक उपयुक्त शब्द होगा-

- Ans 1. प्रिय
 2. बुरी
 3. सुन्दर
 4. अच्छी

Question ID : 65497833164

Status : Not Answered

Chosen Option : --

Exam Date	25/11/2021
Exam Time :	12:30 PM - 2:00 PM
Subject	Constable GD 2021

Section : Part A General Intelligence and Reasoning

Q.1 Select the number from among the given options that can replace the question mark (?) in the following series.

34, 37, 42, 49, 60, 73, 90, ?

- Ans 1. 109
 2. 119
 3. 117
 4. 99

Question ID : 65497828214
 Status : Answered
 Chosen Option : 1

Q.2 'Suva' is related to 'Fiji' in the same way as 'Helsinki' is related to '_____'.
 Ans 1. Greece
 2. France
 3. Finland
 4. Hungary

Question ID : 65497828234
 Status : Not Answered
 Chosen Option : --

Q.3 Select the correct mirror image of the given combination when the mirror is placed at the right side.

B Y u m g d

- Ans 1. B Y u m g d
 2. B Y u m g d
 3. d g m u Y B
 4. d g m u Y B

Question ID : 65497828215
 Status : Answered
 Chosen Option : 4

Q.4 Six friends A, B, C, D, E and F are sitting in a straight horizontal line facing the north. Four persons are sitting between E and C. D is sitting between A and F. A is to the immediate right of E. Who is sitting to the immediate right of F?

- Ans
- 1. C
 - 2. D
 - 3. B
 - 4. A

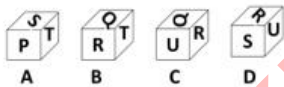
Question ID : 65497828235
 Status : Answered
 Chosen Option : 3

Q.5 N has two children S and P. N's wife J is the only sister of M's mother. R is M's maternal grandfather. How is R related to N?

- Ans
- 1. Son-in-law
 - 2. Father
 - 3. Father-in-law
 - 4. Uncle

Question ID : 65497828232
 Status : Answered
 Chosen Option : 3

Q.6 Select the dice that can be formed by folding the given sheet along the lines.



- Ans
- 1. Only A, B and C
 - 2. Only B and D
 - 3. Only A and B
 - 4. A, B, C and D

Question ID : 65497828228
 Status : Answered
 Chosen Option : 4

Q.7 The sum of the present ages of a father and his son is 58 years. Four years ago, the ratio of their ages was 4 : 1. What is the present age of the father?

- Ans
- 1. 35 years
 - 2. 44 years
 - 3. 38 years
 - 4. 40 years

Question ID : 65497828219
 Status : Answered
 Chosen Option : 2

Q.8 Select the combination of letters that when sequentially placed in the blanks of the given series will complete the series.

r _ x l _ q _ _ x _ p q _ e _ l p _

- Ans 1. e, p, r, e, l, r, x, q
 2. p, e, r, p, l, r, x, q
 3. e, x, q, r, p, l, x, p
 4. p, e, q, l, x, p, r, q

Question ID : 65497828222
 Status : Answered
 Chosen Option : 1

Q.9 उस विकल्प का चयन करें, जिसका तीसरे पद से वही सबध है, जो दूसरे पद का पहले पद से है।

LARGE : MASHE :: WATER : _____

- Ans 1. VAUES
 2. VBSFQ
 3. XAUES
 4. XBUFS

Question ID : 65497828230
 Status : Answered
 Chosen Option : 3

Q.10 Select the number from among the given options that can replace the question mark (?) in the following series.

14, 29, 57, 115, 229, ?

- Ans 1. 457
 2. 463
 3. 461
 4. 459

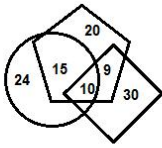
Question ID : 65497828223
 Status : Answered
 Chosen Option : 4

Q.11 Four letter-clusters have been given, out of which three are alike in some manner and one is different. Select the letter-cluster that is different.

- Ans 1. TXBFK
 2. YDINS
 3. BGLQV
 4. PUZEJ

Question ID : 65497828212
 Status : Answered
 Chosen Option : 1

Q.12 In the following diagram, the 'rhombus' stands for 'teachers', the 'circle' stands for 'social servants', and the 'pentagon' stands for 'females'. The numbers given in the different segments represent the number of persons of that category.



How many female teachers are also social servants?

- Ans**
- 1. 24
 - 2. 10
 - 3. 9
 - 4. 15

Question ID : 65497828236
 Status : Answered
 Chosen Option : 2

Q.13 Select the figure from among the given options that can replace the question mark (?) in the following series.



- Ans**
- 1.
 - 2.
 - 3.
 - 4.

KD Job Updates

Question ID : 65497828224
 Status : Answered
 Chosen Option : 3

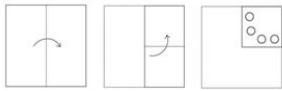
Q.14 Select the letter-cluster from among the given options that can replace the question mark (?) in the following series.

GQT, ETP, CWL, AZH, ?

- Ans**
- 1. YBD
 - 2. YCD
 - 3. ZCD
 - 4. YCE


Question ID : 65497828233
 Status : Answered
 Chosen Option : 2

Q.15 The sequence of folding a piece of paper and the manner in which the folded paper has been cut is shown in the following figures. How would this paper look when unfolded?

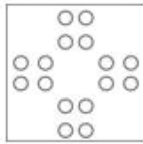


Ans

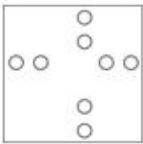
1.



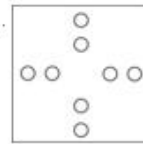
2.



3.



4.



Question ID : 65497828220

Status : Answered

Chosen Option : 2

Q.16 Select the number-triad in which the three numbers share a different relationship from that shared by the three numbers in the rest of the number-triads.

Ans 1. (13, 39, 65)

2. (19, 57, 95)

3. (23, 69, 105)

4. (17, 51, 85)

Question ID : 65497828218

Status : Answered

Chosen Option : 3

Q.17 Select the option that is related to the third number in the same way as the second number is related to the first number.

7 : 342 :: 9 : ?

Ans 1. 329

2. 728

3. 327

4. 729

Question ID : 65497828226

Status : Answered

Chosen Option : 2

Q.18 In a certain code language, 'FRY' is coded as '147' and 'CROP' is coded as '208'. How will 'MUSIC' be coded in that language?

- Ans
- 1. 295
 - 2. 385
 - 3. 199
 - 4. 325

Question ID : 65497828213
Status : Answered
Chosen Option : 4

Q.19 In a certain code language, 'SHIMLA' is written as 'TJLQQG' and 'RANCHI' is written as 'SCQGMO'. How will 'MUMBAI' be written in that language?

- Ans
- 1. OWQEEP
 - 2. NWPFFO
 - 3. NXQEFP
 - 4. MXPEFP

Question ID : 65497828216
Status : Answered
Chosen Option : 2

Q.20 In a certain code language, CHEAP is written as QBFIG. How will QUOTE be written in that language?

- Ans
- 1. RVNUF
 - 2. ETOUQ
 - 3. UOQET
 - 4. FUPVR

Question ID : 65497828231
Status : Answered
Chosen Option : 4

Q.21 उस सही विकल्प का चयन करें, जो दिए गए शब्दों के तार्किक और सार्थक क्रम को दर्शाता है।

- i. फूल
- ii. अकुर
- iii. फल
- iv. पौधा
- v. बीज

- Ans
- 1. ii, v, iv, i, iii
 - 2. v, ii, iv, i, iii
 - 3. ii, i, iii, iv, v
 - 4. v, iv, i, iii, ii

Question ID : 65497828221
Status : Answered
Chosen Option : 2

Q.22 Select the option that is embedded in the given figure (rotation is NOT allowed).



Ans

- 1.
- 2.
- 3.
- 4.

Question ID : 65497828229

Status : Answered

Chosen Option : 2

Q.23 Eight friends, Arvind, Priya, Kunal, Kajal, Ashish, Mahak, Shubham and Riddhi are sitting around an octagonal table, facing the centre. Kunal is between Mahak and Ashish. Kajal is between Priya and Arvind. Shubham is to the immediate left of Riddhi. Arvind is third to the right of Ashish. Who is sitting between Riddhi and Priya?

Ans

- 1. Ashish
- 2. Arvind
- 3. Kajal
- 4. Shubham

Question ID : 65497828225

Status : Answered

Chosen Option : 4

Q.24 Read the given statements and conclusions carefully. Assuming that the information given in the statements is true, even if it appears to be at variance with commonly known facts, decide which of the given conclusions logically follow(s) from the statements.

Statements:

All leaders are males.

Some students are leaders.

Conclusions:

I. Some students are males.

II. All leaders are students.

Ans

- 1. Only conclusion I follows
- 2. Both conclusions I and II follow
- 3. Only conclusion II follows
- 4. Either conclusion I or II follows

Question ID : 65497828217

Status : Answered

Chosen Option : 1

Q.25 If '+' means '-', '-' means 'x', 'x' means '+', and '+' means '+', then what will be the value of the following expression?

$$9 - 9 \div 72 \times 4 + 6$$

- Ans
- 1. 27
 - 2. 29
 - 3. 98
 - 4. 93

Question ID : 65497828227
Status : Answered
Chosen Option : 4

Section : Part B General Knowledge and General Awareness

Q.1 Inertia can be measured by its _____.

- Ans
- 1. force
 - 2. state of motion
 - 3. mass
 - 4. acceleration

Question ID : 65497828252
Status : Answered
Chosen Option : 4

Q.2 Which ministry/institution has released the Provisional Estimates of National Income for the financial year 2019-20, both – at Constant Prices (2011-12) and Current Prices?

- Ans
- 1. National Statistical Office
 - 2. NITI Aayog
 - 3. Ministry of Home Affairs
 - 4. Finance Commission

Question ID : 65497828245
Status : Answered
Chosen Option : 1

Q.3 The _____ dam is built across the Subarnarekha river.

- Ans
- 1. Bhairwa
 - 2. Malay
 - 3. Barhi
 - 4. Chandil

Question ID : 65497828260
Status : Answered
Chosen Option : 4

Q.4 Which among the following is NOT a participant at the 2020-21 Hero Indian Super League?

- Ans
- 1. Odisha FC
 - 2. Kochi FC
 - 3. Jamshedpur FC
 - 4. Bengaluru FC

Question ID : 65497828244
Status : Answered
Chosen Option : 3

Q.5 भारतीय दंड संहिता की धारा 354 _____ से संबधित है।

- Ans
- 1. स्वेच्छा से गभीर चोट पहुंचाने के लिए दंड
 - 2. अपहरण करने के लिए दंड
 - 3. किसी व्यक्ति को गभीर आघात या मृत्यु का भय दिखाकर रगदारी वसूलने
 - 4. किसी स्त्री की लज्जा भंग करने के उद्देश्य से उस महिला पर हमला करने या उस पर आपराधिक बल का प्रयोग करने

Question ID : 65497828258
Status : Answered
Chosen Option : 1

Q.6 What was the maiden name of Begum Nur Jahan?

- Ans
- 1. Padmavati
 - 2. Indira Kanwar
 - 3. Mehr-un-Nissa
 - 4. Harkha Bai

Question ID : 65497828254
Status : Answered
Chosen Option : 3

Q.7 जुलाई 2021 में, _____ को 2019 के लिए इंडियन स्पोर्ट्स ऑनर में डिफरेंटली एबल्ड स्पोर्ट्समैन ऑफ द इयर (Differently Abled Sportsman of the Year) के रूप में नामित किया गया था।

- Ans
- 1. प्रमोद भगत
 - 2. धर्मबीर नैन
 - 3. विवेक चिकारा
 - 4. अमित कुमार सरोहा

Question ID : 65497828261
Status : Answered
Chosen Option : 4

Q.8 Who was the winner of 'The Hindu Prize 2019' in the category of Fiction?

- Ans
- 1. Neelum Saran Gour
 - 2. Anuradha Roy
 - 3. Mirza Waheed
 - 4. Amitabha Bagchi

Question ID : 65497828253
Status : Answered
Chosen Option : 1

Q.9 भारतीय रिजर्व बैंक अधिनियम, 1934 की धारा _____ के अनुसार, बैंक को सभी मूल्यवर्गों के बैंक नोट जारी करने का पूर्ण अधिकार प्राप्त है।

- Ans
- 1. 25
 - 2. 22
 - 3. 20
 - 4. 32

Question ID : 65497828242
Status : Not Answered
Chosen Option : --

Q.10 Who among the following is the author of the book 'Maun Muskaan Ki Maar'?

- Ans 1. Ashutosh Rana
 2. Jugal Hansraj
 3. Uday Chopra
 4. Ronit Roy

Question ID : 65497828239
Status : Answered
Chosen Option : 2

Q.11 Who among the following is a shot put player from India?

- Ans 1. Vikash Thakur
 2. Tajinderpal Singh Toor
 3. Deepak Lather
 4. Jeremy Lalrinnunga

Question ID : 65497828240
Status : Answered
Chosen Option : 2

Q.12 World Philosophy Day is celebrated each year on the third _____ of November.

- Ans 1. Thursday
 2. Saturday
 3. Friday
 4. Monday

Question ID : 65497828248
Status : Not Answered
Chosen Option : --

Q.13 भारत के कितने राज्यों में द्विसदनीय विधानमंडल है?

- Ans 1. दो
 2. सात
 3. चार
 4. छह

Question ID : 65497828256
Status : Not Answered
Chosen Option : --

Q.14 The Government of India revised the National List of Essential Medicines (NLEM) in September 2021 by adding _____ drugs and deleting some.

- Ans 1. 27
 2. 42
 3. 16
 4. 39

Question ID : 65497828259
Status : Answered
Chosen Option : 2

Q.15 Who was the viceroy of India when Arya Samaj was founded by Swami Dayananda Saraswati?

- Ans 1. Lord Northbrook
 2. Lord Curzon
 3. Lord Lansdowne
 4. Lord Dalhousie

Question ID : 65497828247
 Status : Answered
 Chosen Option : 2

Q.16 कृषि की उस शाखा को क्या कहा जाता है, जो बागानी फसलो (garden crops) – सामान्यतः फल, सब्जियों और सजावटी पौधो से सबधित है?

- Ans 1. बागबानी (Horticulture)
 2. रेशम कीट-पालन (Sericulture)
 3. पर्माकल्चर (Permaculture)
 4. पुष्पकृषि (Floriculture)

Question ID : 65497828238
 Status : Answered
 Chosen Option : 1

Q.17 _____, आर्थिक स्थितियों को प्रभावित करने के लिए सरकारी व्यय और कर नीतियों का उपयोग है।

- Ans 1. सविदात्मक मौद्रिक नीति
 2. विस्तारकारी नीति
 3. मौद्रिक नीति
 4. राजकोषीय नीति

Question ID : 65497828249
 Status : Answered
 Chosen Option : 4

Q.18 निम्न में से कौन-सी कला शैली पुरुषो द्वारा प्रदर्शित की जाती है, जिसमें उनका शरीर 'रामरस' से सना रहता है और वे साधारणतया पीले रंग के परिधान पहनकर गाते हुए 'करताल' के साथ नृत्य करते हैं?

- Ans 1. झूला (Jhoola)
 2. खेलिड़ा (Kheliran)
 3. झूमर (Jhumar)
 4. चैती (Chaiti)

Question ID : 65497828250
 Status : Answered
 Chosen Option : 4

Q.19 ओडिशा राज्य का 'धेनका (Dhenka)' एक लोकप्रिय _____ वाद्ययंत्र है।

- Ans 1. इडियोफोन (idiophone)
 2. कोर्डोफोन (chordophone)
 3. एरोफोन (aerophone)
 4. मेम्ब्रेनोफोन (membranophone)

Question ID : 65497828237
 Status : Not Answered
 Chosen Option : --

Q.20 Which of the following statements is NOT true regarding brain fingerprinting?

- Ans 1. Brain fingerprinting is also known as Brain Electrical Oscillation Signature Profiling (BEOSP).
2. The test involves a question answer session with the accused.
3. The test is carried out by electroencephalogram, to study the electrical behaviour of the human brain.
4. Information or material discovered during the tests can be made part of the evidence.

Question ID : 65497828257
Status : Answered
Chosen Option : 3

Q.21 Narayana Guru, one of the great social reformers of the 19th century, was born in the state of _____.

- Ans 1. Karnataka
2. West Bengal
3. Assam
4. Kerala

Question ID : 65497828243
Status : Answered
Chosen Option : 2

Q.22 पौधो और पशुओ में जैविक घटनाओ, जैसे - फूल आना, पत्तिया निकलना, सुषुप्तावस्था, प्रजनन और प्रवासन आदि के समय का अध्ययन क्या कहलाता है?

- Ans 1. पौमोलॉजी (pomology)
2. लाइकेनोलॉजी (lichenology)
3. सिनेथेरोलॉजी (synantherology)
4. फीनोलॉजी (phenology)

Question ID : 65497828246
Status : Answered
Chosen Option : 1

Q.23 As of March 2021, which Indian state stands first in Jute production?

- Ans 1. West Bengal
2. Assam
3. Jharkhand
4. Tripura

Question ID : 65497828241
Status : Answered
Chosen Option : 1

Q.24 Which of the following is India's first indigenously developed vaccine developed by Serum Institute of India in collaboration with the Bill and Melinda Gates Foundation and PATH?

- Ans 1. Varicella
2. Cholera
3. Pneumosil
4. Anthrax

Question ID : 65497828251
Status : Answered
Chosen Option : 4

Q.25 Which of the following Indian slums is one of the world's largest slums?

- Ans
- 1. Bhalswa
 - 2. Basanti
 - 3. Dharavi
 - 4. Nochikuppam

Question ID : 65497828255
 Status : Answered
 Chosen Option : 3

Section : Part C Elementary Mathematics

Q.1 The LCM of $\frac{3}{7}$ and $\frac{18}{5}$ is:

- Ans
- 1. 7
 - 2. 18
 - 3. 10
 - 4. 6

Question ID : 65497828274
 Status : Answered
 Chosen Option : 2

Q.2 A's monthly salary is 20% more than B's monthly salary. C's monthly salary is ₹25,000 more than B's monthly salary. Their total monthly salary is ₹2,65,000. The salary of C is what percentage more than that of A's salary?

- Ans
- 1. $13\frac{1}{9}\%$
 - 2. $19\frac{1}{5}\%$
 - 3. $11\frac{1}{9}\%$
 - 4. $5\frac{1}{5}\%$

Question ID : 65497828264
 Status : Answered
 Chosen Option : 3

Q.3 If 782 is divided in the ratio of $\frac{1}{2} : \frac{2}{3} : \frac{3}{4}$, then the first part will be:

- Ans
- 1. 204
 - 2. 144
 - 3. 156
 - 4. 324

Question ID : 65497828276
 Status : Answered
 Chosen Option : 1

Q.4 A shopkeeper purchased some material for ₹800, of which 40% was sold at a loss of 10%. To obtain a gain of 12%, the percentage profit on the remaining goods must be:

Ans

- 1. $26\frac{1}{3}\%$
- 2. 12%
- 3. $26\frac{2}{3}\%$
- 4. $26\frac{3}{5}\%$

Question ID : 65497828279

Status : Answered

Chosen Option : 3

Q.5 For doing a certain work, the efficiencies of A, B and C are in the ratio 2 : 3 : 5. Working together, they can complete the same work in 15 days. B and C can complete 80% of the original work in:

Ans

- 1. 15 days
- 2. 18 days
- 3. 20 days
- 4. 12 days

Question ID : 65497828285

Status : Answered

Chosen Option : 1

Q.6 The sum of the radius of the base and height of a solid cylinder is 17 cm. If the total surface area of the solid cylinder is 748 cm^2 , then the height of the cylinder is:

Ans

- 1. 12 cm
- 2. 15 cm
- 3. 14 cm
- 4. 10 cm

Question ID : 65497828268

Status : Answered

Chosen Option : 4

Q.7 A train X of length 345 m running at 50 km/h crosses another train Y running at 76 km/h in the opposite direction in 22 seconds. Train Y will cross a bridge of length 905 m in:

Ans

- 1. 54 seconds
- 2. 56 seconds
- 3. 52 seconds
- 4. 63 seconds

Question ID : 65497828286

Status : Answered

Chosen Option : 4

Q.8 On what sum will the simple interest at a rate of $x\%$ p.a. in x years will be ₹ x ?

- Ans
- 1. ₹ $x/100$
 - 2. ₹ $100x$
 - 3. ₹ $100/x$
 - 4. ₹ x

Question ID : 65497828277
Status : Answered
Chosen Option : 3

Q.9 The profit earned after selling an article for ₹5,800 is the same as the loss incurred after selling the article for ₹2,200.
The profit (in ₹) is:

- Ans
- 1. 2,100
 - 2. 1,500
 - 3. 1,200
 - 4. 1,800

Question ID : 65497828265
Status : Answered
Chosen Option : 4

Q.10 The income of A is 80% more than that of B, and the income of C is 25% more than 20% of the combined incomes of A and B. By what percentage is the income of C less than the income of A? (Correct to one decimal place)

- Ans
- 1. 61.1%
 - 2. 82.8%
 - 3. 62.6%
 - 4. 157.1%

Question ID : 65497828284
Status : Answered
Chosen Option : 4

Q.11 $6 \times (4 \times 5^2) \div 3 + 7 - 8 = ?$

- Ans
- 1. 199
 - 2. 299
 - 3. 189
 - 4. 200

Question ID : 65497828269
Status : Answered
Chosen Option : 1

Q.12 A shopkeeper sells a fan for ₹912 at a gain of 14% and another fan for ₹1,012 at a loss of 8%. What is his overall gain or loss percentage?

- Ans**
- ✓ 1. $1\frac{5}{19}$ % gain
 - ✗ 2. $1\frac{4}{9}$ % loss
 - ✗ 3. $1\frac{2}{5}$ % loss
 - ✗ 4. $1\frac{3}{11}$ % gain

Question ID : 65497828281
Status : Answered
Chosen Option : 1

Q.13 The unit's digit in $(263)^{149} + (263)^{150} + (263)^{151}$ is:

- Ans**
- ✗ 1. 1
 - ✓ 2. 9
 - ✗ 3. 3
 - ✗ 4. 7

Question ID : 65497828263
Status : Answered
Chosen Option : 2

Q.14 Three horses are tied at three vertices of a triangular field, each with a 7 m long rope. What is the total area grazed by the horses?

- Ans**
- ✗ 1. 58 m^2
 - ✗ 2. 46 m^2
 - ✗ 3. 70 m^2
 - ✓ 4. 77 m^2

Question ID : 65497828273
Status : Answered
Chosen Option : 4

Q.15 Three persons namely Govind, Rahim and Sudhir can complete a work in 8, 12 and 15 days, respectively. The time taken to complete the work when they work together is:

- Ans**
- ✓ 1. $40/11$ days
 - ✗ 2. 4 days
 - ✗ 3. $53/11$ days
 - ✗ 4. 6 days

Question ID : 65497828280
Status : Answered
Chosen Option : 1

Q.16 A sum lent at compound interest amounts to 72.8% more than itself in 3 years, interest compounded annually at a certain rate per cent per annum. What will be the compound interest (in ₹) on a sum of ₹18,000 for $1\frac{1}{2}$ years at the same rate, if the interest is compounded six-monthly?

- Ans**
- 1. 6,897
 - 2. 5,598
 - 3. 7,654
 - 4. 5,958

Question ID : 65497828266
Status : Answered
Chosen Option : 4

Q.17 What price should a shopkeeper mark on an article, costing him ₹210, to gain 16% after allowing a discount of 16%?

- Ans**
- 1. ₹290
 - 2. ₹210
 - 3. ₹270
 - 4. ₹250

Question ID : 65497828262
Status : Answered
Chosen Option : 1

Q.18 A car takes 4 hours to cover a distance if it travels at a speed of 60 km/h. What should be its speed (in km/h) to cover the same distance in 1.5 hours?

- Ans**
- 1. 150
 - 2. 165
 - 3. 180
 - 4. 160

Question ID : 65497828270
Status : Answered
Chosen Option : 4

Q.19 Two positive numbers A and B ($A > B$) are in the ratio 11 : 8. If the difference between 7 times of A and 4 times of B is 225, then the value of $2A + 3B$ is:

- Ans**
- 1. 330
 - 2. 220
 - 3. 230
 - 4. 320

Question ID : 65497828267
Status : Answered
Chosen Option : 3

Q.20 The average weight of some persons in a group is 70 kg. When 15 persons with average weight 60 kg leave the group or 15 persons with average weight 87.5 kg join the group, then the average weight of persons in the group in both the cases is equal. How many persons were there in the group, initially?

- Ans**
- 1. 35
 - 2. 45
 - 3. 55
 - 4. 65

Question ID : 65497828282
 Status : Answered
 Chosen Option : 3

Q.21 In how much time will a sum of money double itself at 12% p.a. simple interest?

- Ans**
- 1. 6 years 2 months
 - 2. 8 years 1 month
 - 3. 6 years 4 months
 - 4. 8 years 4 months

Question ID : 65497828272
 Status : Answered
 Chosen Option : 4

Q.22

$$\frac{0.2 \div \frac{1}{2} \text{ of } \frac{2}{3} - 1 \times 2 \div 2}{0.2 \times 2 \div \frac{1}{2} \text{ of } \frac{2}{3} - 2 \text{ of } \frac{1}{2} \div \frac{1}{4}}$$

On simplification, the given expression gives the result as:

- Ans**
- 1. $\frac{1}{7}$
 - 2. -1.3
 - 3. $-\frac{2}{19}$
 - 4. 1.3

Question ID : 65497828278
 Status : Answered
 Chosen Option : 1

Q.23 The average of the ages of a husband and his wife was 25 years at the time of their wedding. After 7 years, they have a 2-year old child. What is the average age of the family at present?

- Ans**
- 1. 21 years
 - 2. 22 years
 - 3. 29 years
 - 4. 25 years

Question ID : 65497828275
 Status : Answered
 Chosen Option : 2

Q.24 An article is sold for ₹452.20, after allowing three successive discounts of 20%, 30% and 5%. If a single discount of 55% is given on the marked price, then its selling price (in ₹) will be:

- Ans
- 1. 425.25
 - 2. 382.50
 - 3. 384.75
 - 4. 467.50

Question ID : 65497828283
 Status : Answered
 Chosen Option : 2

Q.25 Divide 2310 people in three parties such that half in the first party, one-third in the second party and one-sixth in the third party are all equal.

- Ans
- 1. 420, 650, 1240
 - 2. 420, 600, 1290
 - 3. 420, 630, 1260
 - 4. 420, 620, 1270

Question ID : 65497828271
 Status : Answered
 Chosen Option : 3

Section : Part D English

Q.1 The following sentence has been split into four segments. Identify the segment that contains a grammatical error.

Each of the students were / present for / the valedictory session / that night.

- Ans
- 1. present for
 - 2. that night
 - 3. Each of the students were
 - 4. the valedictory session

Question ID : 65497828302
 Status : Not Answered
 Chosen Option : --

Q.2 Select the option that can be used as a one-word substitute for the given group of words.

A person who helps willingly without being paid for it

- Ans
- 1. Volunteer
 - 2. Beggar
 - 3. Worker
 - 4. Leader

Question ID : 65497828296
 Status : Not Answered
 Chosen Option : --

Q.3 Select the most appropriate meaning of the given idiom.

To take pains

- Ans
- 1. To be involved in
 - 2. To wait anxiously
 - 3. To get injured
 - 4. To make efforts

Question ID : 65497828288

Status : Not Answered

Chosen Option : --

Q.4 Select the most appropriate option that can substitute the underlined segment in the given sentence. If there is no need to substitute it, select 'No substitution required'.

Neither the chairman nor the directors has present.

- Ans
- 1. had present
 - 2. are present
 - 3. No substitution required
 - 4. is present

Question ID : 65497828300

Status : Not Answered

Chosen Option : --

Q.5 Select the most appropriate meaning of the given idiom.

Child's play

- Ans
- 1. Something that is very easy
 - 2. Fair behaviour
 - 3. Mischievous behaviour
 - 4. Playful attitude

Question ID : 65497828291

Status : Not Answered

Chosen Option : --

Q.6 Select the option that can be used as a one-word substitute for the given group of words.

Go back over the same route that one has just taken

- Ans
- 1. Retrace
 - 2. Detour
 - 3. Return
 - 4. Reroute

Question ID : 65497828304

Status : Not Answered

Chosen Option : --

Q.7 Select the most appropriate synonym of the given word.

Estimate

- Ans
- 1. Believe
 - 2. Solve
 - 3. Assess
 - 4. Discover

Question ID : 65497828290
Status : Not Answered
Chosen Option : --

Q.8 The following sentence has been split into four segments. Identify the segment that contains a grammatical error.

They would have / won the race / if they would have / run faster.

- Ans
- 1. won the race
 - 2. if they would have
 - 3. run faster
 - 4. They would have

Question ID : 65497828294
Status : Not Answered
Chosen Option : --

Q.9 Select the most appropriate synonym of the given word.

Perceive

- Ans
- 1. Recognise
 - 2. Declare
 - 3. Present
 - 4. Discuss

Question ID : 65497828303
Status : Not Answered
Chosen Option : --

Q.10 Select the INCORRECTLY spelt word.

- Ans
- 1. Aqurarium
 - 2. Honorarium
 - 3. Boutique
 - 4. Bungalow

Question ID : 65497828298
Status : Not Answered
Chosen Option : --

Q.11 The following sentence has been divided into parts. One of them may contain an error. Select the part that contains the error from the given options. If you don't find any error, select 'No error' as your answer.

The book must be / old for its cover / is torn bad.

- Ans 1. No error
 2. old for its cover
 3. The book must be
 4. is torn bad

Question ID : 65497828289
Status : Not Answered
Chosen Option : --

Q.12 Select the most appropriate ANTONYM of the given word.

Deceive

- Ans 1. Delude
 2. Pretend
 3. Betray
 4. Support

Question ID : 65497828305
Status : Not Answered
Chosen Option : --

Q.13 Select the most appropriate ANTONYM of the given word.

Opaque

- Ans 1. Dense
 2. Clear
 3. Misty
 4. Hazy

Question ID : 65497828295
Status : Not Answered
Chosen Option : --

Q.14 Select the most appropriate option to fill in the blank.

He is greatly loved by all for his _____ nature.

- Ans 1. confused
 2. bewildered
 3. decorative
 4. compassionate

Question ID : 65497828299
Status : Not Answered
Chosen Option : --

Q.15 Select the most appropriate option that can substitute the underlined segment in the given sentence. If there is no need to substitute it, select 'No substitution required'.

Srinu had to take a break from his training for the marathon during the lockdown so he decided to go to his hometown.

- Ans
- 1. take a break on
 - 2. took a break in
 - 3. take break for
 - 4. No substitution required

Question ID : 65497828292
Status : Not Answered
Chosen Option : --

Q.16 Select the INCORRECTLY spelt word.

- Ans
- 1. Negotiate
 - 2. Miraculous
 - 3. Reffere
 - 4. Satellite

Question ID : 65497828297
Status : Not Answered
Chosen Option : --

Q.17 Select the most appropriate option to fill in the blank.

People of the same _____ are not allowed to get married in her country.

- Ans
- 1. clan
 - 2. clam
 - 3. clot
 - 4. clum

Question ID : 65497828301
Status : Not Answered
Chosen Option : --

Q.18 Select the most appropriate option to fill in the blank.

After a hectic day, all he wanted was to rest in _____.

- Ans
- 1. calm
 - 2. quiet
 - 3. silence
 - 4. turmoil

Question ID : 65497828287
Status : Not Answered
Chosen Option : --

Q.19 Select the option that can be used as a one-word substitute for the given group of words.

A short interesting or amusing story

- Ans
- 1. Legend
 - 2. Myth
 - 3. Epic
 - 4. Anecdote

Question ID : 65497828293

Status : Not Answered

Chosen Option : --

Q.20 Select the option that will improve the underlined part of the given sentence. In case no improvement is needed, select 'No improvement required'.

The joint family system have undergone drastic changes.

- Ans
- 1. has undergone
 - 2. No improvement required
 - 3. have underwent
 - 4. are undergoing

Question ID : 65497828306

Status : Not Answered

Chosen Option : --

Comprehension:

In the following passage, some words have been deleted. Read the passage carefully and select the most appropriate option to fill in each blank.

Dr. Jill Biden is an English professor in a college and she has four degrees, (1) _____ a doctorate. She is the wife of (2) _____ newly elected U.S. President, Joe Biden. As (3) _____ next first lady, the 69-year-old Jill Biden (4) _____ to keep her job and continue teaching (5) _____ is something that she did as the second lady when her husband was the Vice President.

SubQuestion No : 21

Q.21 Select the most appropriate option to fill in blank no. 1.

- Ans
- 1. include
 - 2. including
 - 3. included
 - 4. includes

Question ID : 65497828308

Status : Not Answered

Chosen Option : --

Comprehension:

In the following passage, some words have been deleted. Read the passage carefully and select the most appropriate option to fill in each blank.

Dr. Jill Biden is an English professor in a college and she has four degrees, (1) _____ a doctorate. She is the wife of (2) _____ newly elected U.S. President, Joe Biden. As (3) _____ next first lady, the 69-year-old Jill Biden (4) _____ to keep her job and continue teaching (5) _____ is something that she did as the second lady when her husband was the Vice President.

SubQuestion No : 22

Q.22 Select the most appropriate option to fill in blank no. 2.

- Ans 1. a
 2. the
 3. an
 4. one

Question ID : **65497828309**
 Status : **Not Answered**
 Chosen Option : --

Comprehension:

In the following passage, some words have been deleted. Read the passage carefully and select the most appropriate option to fill in each blank.

Dr. Jill Biden is an English professor in a college and she has four degrees, (1) _____ a doctorate. She is the wife of (2) _____ newly elected U.S. President, Joe Biden. As (3) _____ next first lady, the 69-year-old Jill Biden (4) _____ to keep her job and continue teaching (5) _____ is something that she did as the second lady when her husband was the Vice President.

SubQuestion No : 23

Q.23 Select the most appropriate option to fill in blank no. 3.

- Ans 1. America's
 2. Americas
 3. Americas's
 4. Americas'

Question ID : **65497828310**
 Status : **Not Answered**
 Chosen Option : --

Comprehension:

In the following passage, some words have been deleted. Read the passage carefully and select the most appropriate option to fill in each blank.

Dr. Jill Biden is an English professor in a college and she has four degrees, (1) _____ a doctorate. She is the wife of (2) _____ newly elected U.S. President, Joe Biden. As (3) _____ next first lady, the 69-year-old Jill Biden (4) _____ to keep her job and continue teaching (5) _____ is something that she did as the second lady when her husband was the Vice President.

SubQuestion No : 24

Q.24 Select the most appropriate option to fill in blank no. 4.

- Ans 1. aims
 2. thinks
 3. plans
 4. plots

Question ID : **65497828311**
 Status : **Not Answered**
 Chosen Option : --

Comprehension:

In the following passage, some words have been deleted. Read the passage carefully and select the most appropriate option to fill in each blank.

Dr. Jill Biden is an English professor in a college and she has four degrees, (1) _____ a doctorate. She is the wife of (2) _____ newly elected U.S. President, Joe Biden. As (3) _____ next first lady, the 69-year-old Jill Biden (4) _____ to keep her job and continue teaching (5) _____ is something that she did as the second lady when her husband was the Vice President.

SubQuestion No : 25

Q.25 Select the most appropriate option to fill in blank no. 5.

- Ans 1. which
 2. who
 3. what
 4. whom

Question ID : 65497828312
 Status : Not Answered
 Chosen Option : --

Section : Part D Hindi

Q.1 दिये गये वाक्य में रेखांकित अश को प्रतिस्थापित करने के लिए सबसे उपयुक्त विकल्प का चयन करें।

प्रतीक को हर तीसरे दिन दौरा आता है।

- Ans 1. गिरता है।
 2. होता है।
 3. पड़ता है।
 4. चलता है।

Question ID : 65497828331
 Status : Answered
 Chosen Option : 3

Q.2 दिए गए शब्द के समानार्थी शब्द का चयन करें।

चन्द्र

- Ans 1. तोय
 2. वरी
 3. निशा
 4. राकेश

Question ID : 65497828329
 Status : Answered
 Chosen Option : 4

Q.3 'लगोटी में फाग खेलना' इस मुहावरे का क्या अर्थ है?

- Ans 1. धनी का निर्धन हो जाना
 2. पुराने रीति-रिवाजों का अनुसरण करना
 3. दरिद्रता में आनंद लूटना
 4. भाग्य से बड़ा होना

Question ID : 65497828314
 Status : Answered
 Chosen Option : 3

Q.4 दिए गए शब्द का विलोम शब्द चुनें।

कीर्ति

- Ans 1. अकीर्ति
 2. सुकीर्ति
 3. कुकीर्ति
 4. अपकीर्ति

Question ID : 65497828320
 Status : Answered
 Chosen Option : 1

Q.5 दिए गए शब्द के समानार्थी शब्द का चयन करें।

ज्ञानी

- Ans 1. मनोज्ञ
 2. मनीषी
 3. मर्कट
 4. विप्र

Question ID : 65497828318
 Status : Answered
 Chosen Option : 4

Q.6 दिये गये वाक्य में रेखांकित अश को प्रतिस्थापित करने के लिए सबसे उपयुक्त विकल्प का चयन करें।

इस घटना की परीक्षा थानेदार कर रहा है।

- Ans 1. निरीक्षण
 2. निगरानी
 3. देखरेख
 4. जाँच

Question ID : 65497828330
 Status : Answered
 Chosen Option : 4

Q.7 दिए गए वाक्य का वह भाग ज्ञात करें जिसमें कोई त्रुटि है। यदि कोई त्रुटि नहीं है, तो 'कोई त्रुटि नहीं है' चुनें।

पुस्तकें ये (1)/ किसकी (2) हैं? (3)/ कोई त्रुटि नहीं (4)

- Ans 1. 3
 2. 4
 3. 2
 4. 1

Question ID : 65497828328
 Status : Answered
 Chosen Option : 4

Q.8 दिए गए वाक्य में रेखांकित खंड को प्रतिस्थापित करने के लिए सबसे उपयुक्त विकल्प का चयन करें। यदि इसे प्रतिस्थापित करने की आवश्यकता नहीं है, तो विकल्प 'किसी बदलाव की आवश्यकता नहीं है' का चयन करें।

सचिव ने अध्यक्ष के गले में एक गुलाब के फूलों की माला पहनाई।

- Ans
- 1. किसी बदलाव की आवश्यकता नहीं है।
 - 2. गुलाब के फूलों की माला पहनाई।
 - 3. एक गुलाबों के फूलों की माला पहनाई।
 - 4. गुलाब के फूलों की एक माला पहनाई।

Question ID : 65497828313

Status : Answered

Chosen Option : 4

Q.9 रिक्त स्थान को भरने के लिए सबसे उपयुक्त शब्द का चयन करें।

_____ लोगों की यही धारणा है।

- Ans
- 1. कम
 - 2. अधिकतर
 - 3. ज्यादा
 - 4. अधिक

Question ID : 65497828322

Status : Answered

Chosen Option : 2

Q.10 दिए गए वाक्य का वह भाग ज्ञात करें जिसमें कोई त्रुटि है। यदि कोई त्रुटि नहीं है, तो 'कोई त्रुटि नहीं है' चुनें।

कश्मीर में (1)/ अनेक दर्शनीय स्थल (2)/ देखने योग्य हैं। (3)/ कोई त्रुटि नहीं है (4)

- Ans
- 1. 3
 - 2. 1
 - 3. 2
 - 4. 4

Question ID : 65497828325

Status : Answered

Chosen Option : 1

Q.11 निम्नलिखित प्रश्न में दिए गए चार विकल्पों में से, उस विकल्प का चयन करें, जो दिए गए मुहावरे के अर्थ को व्यक्त करता है।

खोदा पहाड़ निकली चुहिया

- Ans
- 1. दिखावा ही दिखावा करना
 - 2. अटपटा काम करना
 - 3. अधिक परिश्रम के बाद साधारण लाभ
 - 4. बिना बल कोई काम करना

Question ID : 65497828321

Status : Answered

Chosen Option : 3

Q.12 रिक्त स्थान भरने के लिए सबसे उपयुक्त शब्द का चयन करें।

बहुत से देशों ने एशियाई खेल _____ में भाग लिया।

- Ans
- 1. परीक्षा
 - 2. निरीक्षण
 - 3. प्रतियोगिता
 - 4. परीक्षण

Question ID : 65497828316
Status : Answered
Chosen Option : 3

Q.13 सही वर्तनी वाले शब्द का चयन करें।

- Ans
- 1. ऐश्वर्यशाली
 - 2. ऐश्वर्यशाली
 - 3. ऐशवर्यशाली
 - 4. ऐश्वर्यशालि

Question ID : 65497828323
Status : Answered
Chosen Option : 2

Q.14 रिक्त स्थान को भरने के लिए सबसे उपयुक्त शब्द का चयन करें।

तुम्हारे मित्रों को मैं _____ जानता हूँ।

- Ans
- 1. अच्छी तरह में
 - 2. अच्छे तरह से
 - 3. खूब
 - 4. अच्छी तरह से

Question ID : 65497828319
Status : Answered
Chosen Option : 4

Q.15 'मिट्टी का बना हुआ' वाक्यांश के लिए एक शब्द होगा-

- Ans
- 1. निर्जीव
 - 2. प्रस्तर
 - 3. खिलौना
 - 4. पार्थिव

Question ID : 65497828332
Status : Answered
Chosen Option : 2

Q.16 दिए गए शब्द का विलोम चुनें।

लिप्त

- Ans
- 1. निर्लिप्त
 - 2. विलुप्त
 - 3. अलिप्त
 - 4. विलिप्त

Question ID : 65497828326
Status : Answered
Chosen Option : 3

Q.17 दिए गए वाक्य का वो भाग ज्ञात करें जिसमें कोई त्रुटि है। यदि कोई त्रुटि नहीं है, तो 'कोई त्रुटि नहीं है' चुनें।

अपने गुणों के कारण (1) उसका सब जगह (2) आदर-सत्कार होता था (3) कोई त्रुटि नहीं है (4)

- Ans
- 1. 1
 - 2. 4
 - 3. 3
 - 4. 2

Question ID : 65497828317
Status : Answered
Chosen Option : 2

Q.18 दिए गए वाक्यांश के लिए एक सार्थक शब्द दीजिए।

जो जानने की इच्छा रखता हो

- Ans
- 1. जिगीषा
 - 2. जिज्ञासा
 - 3. जिगीषु
 - 4. जिज्ञासु

Question ID : 65497828315
Status : Answered
Chosen Option : 4

Q.19 दिये गये वाक्यांश के लिए एक शब्द दीजिये।

जो उपकारों को नहीं मानता है

- Ans
- 1. कृतज्ञ
 - 2. प्रतिपक्षी
 - 3. कृतघ्न
 - 4. विरोधी

Question ID : 65497828327
Status : Answered
Chosen Option : 3

Q.20 सही वर्तनी वाले शब्द का चयन करें।

- Ans
- 1. अनुकरणीय
 - 2. अनुकरणिय
 - 3. अनुकरणिय
 - 4. अनुकरणीय

Question ID : 65497828324
Status : Answered
Chosen Option : 1

Comprehension:

दिए गए अनुच्छेद में कुछ शब्द हटा दिए गए हैं। दिए गए विकल्पों की सहायता से रिक्त स्थान भरें। प्रत्येक सख्या के लिए सबसे उपयुक्त विकल्प का चयन करें।

हम यह कह सकते हैं कि हमारे चारों ओर (1) _____, वहीं (2) _____ है। प्रकृति ने हमारे लिए एक (3) _____ एव सुखद आवरण का निर्माण किया था, परन्तु मनुष्य ने (4) _____ सुखों के कारण – उसे (5) _____ कर दिया।

SubQuestion No : 21

Q.21 गद्यांश के रिक्त स्थान (1) के लिए सर्वाधिक उपयुक्त शब्द होगा-

- Ans** 1. विद्यमान
 2. प्रतिदान
 3. ओझल
 4. अप्राप्य

Question ID : 65497828334

Status : Answered

Chosen Option : 1

Comprehension:

दिए गए अनुच्छेद में कुछ शब्द हटा दिए गए हैं। दिए गए विकल्पों की सहायता से रिक्त स्थान भरें। प्रत्येक सख्या के लिए सबसे उपयुक्त विकल्प का चयन करें।

हम यह कह सकते हैं कि हमारे चारों ओर (1) _____, वहीं (2) _____ है। प्रकृति ने हमारे लिए एक (3) _____ एव सुखद आवरण का निर्माण किया था, परन्तु मनुष्य ने (4) _____ सुखों के कारण – उसे (5) _____ कर दिया।

SubQuestion No : 22

Q.22 गद्यांश के रिक्त स्थान (2) के लिए सर्वाधिक उपयुक्त शब्द होगा-

- Ans** 1. पर्यावरण
 2. व्यक्ति
 3. समाज
 4. समिति

Question ID : 65497828335

Status : Answered

Chosen Option : 1

Comprehension:

दिए गए अनुच्छेद में कुछ शब्द हटा दिए गए हैं। दिए गए विकल्पों की सहायता से रिक्त स्थान भरें। प्रत्येक सख्या के लिए सबसे उपयुक्त विकल्प का चयन करें।

हम यह कह सकते हैं कि हमारे चारों ओर (1) _____, वहीं (2) _____ है। प्रकृति ने हमारे लिए एक (3) _____ एव सुखद आवरण का निर्माण किया था, परन्तु मनुष्य ने (4) _____ सुखों के कारण – उसे (5) _____ कर दिया।

SubQuestion No : 23

Q.23 गद्यांश के रिक्त स्थान (3) के लिए सर्वाधिक उपयुक्त शब्द होगा-

- Ans** 1. आश्चर्यजनक
 2. अपरम्पार
 3. स्वस्थ
 4. निकृष्ट

Question ID : 65497828336

Status : Answered

Chosen Option : 3

Comprehension:

दिए गए अनुच्छेद में कुछ शब्द हटा दिए गए हैं। दिए गए विकल्पों की सहायता से रिक्त स्थान भरें। प्रत्येक सख्खा के लिए सबसे उपयुक्त विकल्प का चयन करें।

हम यह कह सकते हैं कि हमारे चारों ओर (1) _____, वहीं (2) _____ है। प्रकृति ने हमारे लिए एक (3) _____ एव सुखद आवरण का निर्माण किया था, परन्तु मनुष्य ने (4) _____ सुखों के कारण – उसे (5) _____ कर दिया।

SubQuestion No : 24

Q.24 गद्यांश के रिक्त स्थान (4) के लिए सर्वाधिक उपयुक्त शब्द होगा-

- Ans
- 1. राजनीतिक
 - 2. आध्यात्मिक
 - 3. सांस्कृतिक
 - 4. भौतिक

Question ID : 65497828337

Status : Answered

Chosen Option : 4

Comprehension:

दिए गए अनुच्छेद में कुछ शब्द हटा दिए गए हैं। दिए गए विकल्पों की सहायता से रिक्त स्थान भरें। प्रत्येक सख्खा के लिए सबसे उपयुक्त विकल्प का चयन करें।

हम यह कह सकते हैं कि हमारे चारों ओर (1) _____, वहीं (2) _____ है। प्रकृति ने हमारे लिए एक (3) _____ एव सुखद आवरण का निर्माण किया था, परन्तु मनुष्य ने (4) _____ सुखों के कारण – उसे (5) _____ कर दिया।

SubQuestion No : 25

Q.25 गद्यांश के रिक्त स्थान (5) के लिए सर्वाधिक उपयुक्त शब्द होगा-

- Ans
- 1. उज्वल
 - 2. आकस्मिक
 - 3. दूषित
 - 4. अद्भुत

Question ID : 65497828338

Status : Answered

Chosen Option : 3

Exam Date	15/12/2021
Exam Time :	12:30 PM - 2:00 PM
Subject	Constable GD 2021

Section : Part A General Intelligence and Reasoning

Q.1 Select the option that is related to the fourth number in the same way as the first number is related to the second number and the fifth number is related to the sixth number.

26 : 6 :: ? : 11 :: 37 : 7

- Ans 1. 101
 2. 122
 3. 82
 4. 145

Question ID : 65497834312
 Status : Answered
 Chosen Option : 1

Q.2 Eight girls, K, L, M, N, O, P, Q and R, are sitting in two lines, with four girls in each line. Both the lines are facing the same direction. One line is behind the other line. K is at a corner and to the immediate left of P. O is to the immediate left of M. Two persons are sitting between K and R. L is just behind P. O is between L and M. N is not in the front line. Who is sitting between P and R?

- Ans 1. Q
 2. M
 3. L
 4. N

Question ID : 65497834311
 Status : Answered
 Chosen Option : 1

Q.3 Select the correct option that indicates the arrangement of the given words in the order in which they appear in an English dictionary.

1. Patent
2. Patient
3. Patience
4. Paternalism
5. Patella

- Ans 1. 1, 4, 2, 3, 5
 2. 5, 4, 1, 3, 2
 3. 5, 1, 4, 3, 2
 4. 5, 1, 2, 3, 4

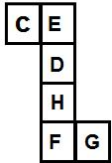
Question ID : 65497834317
 Status : Answered
 Chosen Option : 3

Q.4 Four letter-clusters have been given, out of which three are alike in some manner and one is different. Select the letter-cluster that is different.

- Ans 1. DSE
 2. MMV
 3. LPU
 4. AMU

Question ID : 65497834329
 Status : Answered
 Chosen Option : 2

Q.5 A cube is made by folding the given sheet. In the cube so formed, which pair of letters will be on the opposite faces?



- Ans 1. E and D
 2. E and H
 3. C and F
 4. C and H

Question ID : 65497834314
 Status : Answered
 Chosen Option : 2

Q.6 Six friends, A, B, C, D, E and F, are sitting around a circular table facing the centre. D is third to the right of B. F is to the immediate right of D. C is between D and E. Who is sitting between B and F?

- Ans 1. C
 2. E
 3. D
 4. A

Question ID : 65497834310
 Status : Answered
 Chosen Option : 4

Q.7 Select the combination of letters that when sequentially placed in the blanks of the given series will complete the series.

K U _ _ N K _ Q P _ _ U _ P N

- Ans 1. QPUNKQ
 2. QPUNQK
 3. QQPUNK
 4. QUPQNK

Question ID : 65497834318
 Status : Answered
 Chosen Option : 1

Q.8 Study the given pattern carefully and select the number that can replace the question mark (?) in it.

26 19 12
32 ? 16
23 20 17

- Ans 1. 24
 2. 15
 3. 32
 4. 28

Question ID : 65497834323
Status : Answered
Chosen Option : 1





Q.9 When twice of a number added to 3 is multiplied by 5 and added to the number itself, it gives 158. What is the square of that number?

- Ans 1. 225
 2. 289
 3. 169
 4. 121

Question ID : 65497834324
Status : Answered
Chosen Option : 3

Q.10 Select the option that is embedded in the given figure (rotation is NOT allowed).



- Ans 1. 
 2. 
 3. 
 4. 

Question ID : 65497834315
Status : Answered
Chosen Option : 4

Q.11 Select the letter-cluster from among the given options that can replace the question mark (?) in the following series.

NKY, LHU, JEQ, ?, FYI

- Ans 1. HBM
 2. HCN
 3. GAO
 4. IBN


Question ID : 65497834308
Status : Answered
Chosen Option : 1

Q.12 The sequence of folding a piece of paper and the manner in which the folded paper has been cut is shown in the following figures. How would this paper look when unfolded?




Ans


1.




2.



3.



4.



Question ID : 65497834325

Status : Answered

Chosen Option : 2

Q.13 In a certain code language, 'GLARE' is written as '201526922', 'DUST' is written as '23687'. How will 'HYPER' be written in that language?

Ans

1. 19221219

2. 19211229

3. 19121229

4. 19122129

Question ID : 65497834330

Status : Answered

Chosen Option : 2

Q.14 Select the number from among the given options that can replace the question mark (?) in the following series.

7, 16, 41, ?, 171, 292

Ans

1. 100

2. 97

3. 90

4. 81

Question ID : 65497834331





Status : Answered

Chosen Option : 3

Q.15 Select the Venn diagram that best represents the relationship between the following classes.

Mothers, Daughters, Females

Ans

- 1. 
- 2. 
- 3. 
- 4. 

Question ID : 65497834316
 Status : Answered
 Chosen Option : 2

Q.16 In a certain code language, LOTUS is written as NMVSU. How will TULIP be written in that language?

- 1. UVMJQ
- 2. VSNGR
- 3. UTMHQ
- 4. VWNKR

Question ID : 65497834321
 Status : Answered
 Chosen Option : 2

Q.17 'Medicines' is related to 'Pharmacy' in the same way as 'Historical objects' is related to _____.

- 1. Culture
- 2. Industry
- 3. Museum
- 4. Architecture

Question ID : 65497834309
 Status : Answered
 Chosen Option : 3

Q.18 Read the given statements and conclusions carefully. Assuming that the information given in the statements is true, even if it appears to be at variance with commonly known facts, decide which of the given conclusions logically follow(s) from the statements.

Statements:

Some roses are pansies.

Some lilies are pansies.

All roses are daisies.

Conclusions:

I. Some roses are lilies.

II. All pansies are daisies.

- Ans**
- 1. Both conclusions I and II follow
 - 2. Only conclusion I follows
 - 3. Only conclusion II follows
 - 4. Neither conclusion I nor II follows

Question ID : 65497834322

Status : Answered

Chosen Option : 4

Q.19 In a certain code language, 'TONIC' is written as 'UPOJDB', and 'PRINT' is written as 'QSJOUS'. How will 'SUPER' be written in that language?

- Ans**
- 1. TVQFST
 - 2. TVFQSQ
 - 3. TUQSQF
 - 4. TVQFSQ

Question ID : 65497834327

Status : Answered

Chosen Option : 4

Q.20 Which two numbers should be interchanged to make the given equation correct?

$$45 + 35 \times 7 - 81 \div 9 = 321$$


- Ans**
- 1. 45 and 35
 - 2. 45 and 7
 - 3. 7 and 9
 - 4. 45 and 81

Question ID : 65497834313

Status : Answered

Chosen Option : 4

Q.21 Select the figure from among the given options that can replace the question mark (?) in the following series.



Ans

- 1.
- 2.
- 3.
- 4.

Question ID : 65497834320
 Status : Answered
 Chosen Option : 4

Q.22 Pointing to a photograph of a boy, Aditya said, "He is the only son of my mother-in-law's only daughter." How is the boy related to Aditya?

- 1. Nephew
- 2. Brother-in-law
- 3. Son
- 4. Father-in-law

Question ID : 65497834328
 Status : Answered
 Chosen Option : 3

Q.23 Select the number from among the given options that can replace the question mark (?) in the following series.

11, 33, 13, 39, 17, ?

- 1. 51
- 2. 41
- 3. 57
- 4. 19

Question ID : 65497834319
 Status : Answered
 Chosen Option : 1

Q.24 Select the correct mirror image of the given combination when the mirror is placed at 'PQ'.

NUMERICAL
 P
 |
 Q

- Ans
- ✓ 1. NUMERICAL
 - ✗ 2. NUMERICAI
 - ✗ 3. NUMERICAV
 - ✗ 4. NUMERICAV

Question ID : 65497834332
 Status : Answered
 Chosen Option : 1

Q.25 Select the option that is related to the third letter-cluster in the same way as the second letter-cluster is related to the first letter-cluster.

BGL : HNT :: EIM : ?

- Ans
- ✗ 1. ILN
 - ✗ 2. JLP
 - ✓ 3. KPU
 - ✗ 4. QTX

Question ID : 65497834326
 Status : Answered
 Chosen Option : 3

Section : Part B General Knowledge and General Awareness

Q.1 Aurangzeb had depleted the military and financial resources of his empire by fighting a long war in _____.

- Ans
- ✗ 1. Hyderabad
 - ✗ 2. Awadh
 - ✗ 3. Bengal
 - ✓ 4. the Deccan

Question ID : 65497834350
 Status : Not Answered
 Chosen Option : --

Q.2 Project Snow Leopard was launched in India in _____.

- Ans
- ✗ 1. 2014
 - ✗ 2. 2012
 - ✓ 3. 2009
 - ✗ 4. 2006

Question ID : 65497834341
 Status : Not Answered
 Chosen Option : --

Q.3 Which among the following states does NOT come under the catchment area of River Yamuna?

- Ans 1. Punjab
 2. Uttarakhand
 3. Himachal Pradesh
 4. Rajasthan

Question ID : 65497834344
Status : Not Answered
Chosen Option : --

Q.4 Heptathlete Swapna Barman hails from the state of _____.

- Ans 1. Mizoram
 2. Odisha
 3. Nagaland
 4. West Bengal

Question ID : 65497834356
Status : Not Answered
Chosen Option : --

Q.5 How many Indian beaches were awarded the prestigious 'Blue Flag certification' by an international jury in October 2020?

- Ans 1. Six
 2. Five
 3. Eight
 4. Seven

Question ID : 65497834340
Status : Not Answered
Chosen Option : --

Q.6 On 1st December 2020, which of the following states launched the scheme 'Orunodoi'?

- Ans 1. Himachal Pradesh
 2. Sikkim
 3. Assam
 4. West Bengal

Question ID : 65497834343
Status : Answered
Chosen Option : 4

Q.7 Which of the following is a primary constituent of pearl?

- Ans 1. Calcium carbonate
 2. Calcium sulfate
 3. Sodium bicarbonate
 4. Magnesium Peroxide

Question ID : 65497834337
Status : Answered
Chosen Option : 1

Q.8 The Hazarduari Palace is located in _____.

- Ans 1. Bikaner
 2. Murshidabad
 3. Mysuru
 4. Jodhpur

Question ID : 65497834353
 Status : Not Answered
 Chosen Option : --

Q.9 Which of the following newspapers was started by Raja Ram Mohan Roy?

- Ans 1. Amrita Bazar Patrika
 2. Karmayogin
 3. Ananda Bazar Patr ka
 4. Sambad Kaumudi

Question ID : 65497834342
 Status : Not Answered
 Chosen Option : --

Q.10 Which among the following was the first state in the country to fix floor prices of vegetables, with effect from 1 November 2020?

- Ans 1. Kerala
 2. Odisha
 3. Tamil Nadu
 4. Telangana

Question ID : 65497834352
 Status : Not Answered
 Chosen Option : --

Q.11 _____ near Allahabad had a sophisticated water harvesting system that channelled the flood water of the river Ganga, even in ancient times.

- Ans 1. Lahuradewa
 2. Kaushambi (Kosambi)
 3. Sringerapur
 4. Jhansi

Question ID : 65497834354
 Status : Not Answered
 Chosen Option : --

Q.12 The play 'Abhijnana Shakuntalam' by Kalidasa is a love story between Shakuntala and King _____.

- Ans 1. Dushasana
 2. Dasharatha
 3. Dhritarashtra
 4. Dushyanta

Question ID : 65497834355
 Status : Answered
 Chosen Option : 4

Q.13 Sorters in the Wool industry sometimes get infected by a bacterium called _____, which causes a fatal blood disease called 'Sorter's Disease'.

- Ans
- 1. acetobacter pasteurianus
 - 2. anthrax
 - 3. edwardsiella
 - 4. melittangium boletus

Question ID : 65497834336
Status : Answered
Chosen Option : 4

Q.14 Article 368 of the Constitution of India is related to:

- Ans
- 1. agricultural procedures
 - 2. parliament
 - 3. centre state relations
 - 4. constitutional amendment

Question ID : 65497834351
Status : Answered
Chosen Option : 4

Q.15 In which year will India host the Women's Asian Cup in football?

- Ans
- 1. 2021
 - 2. 2024
 - 3. 2023
 - 4. 2022

Question ID : 65497834348
Status : Answered
Chosen Option : 3

Q.16 The centre of the white portion of the National Flag of India is adorned by a navy-blue Ashoka Chakra, a wheel with _____ spokes.

- Ans
- 1. 22
 - 2. 24
 - 3. 20
 - 4. 30

Question ID : 65497834335
Status : Answered
Chosen Option : 2

Q.17 Which of the following programmes was launched during Union Budget 2020-21 for the nutrition of children and pregnant women?

- Ans
- 1. Poshan Sang
 - 2. Poshan Gyan
 - 3. Poshan Abhiyaan
 - 4. Poshan Adhikar

Question ID : 65497834345
Status : Answered
Chosen Option : 4

Q.18 The expected returns to farmers over their cost of production are estimated to be highest in case of _____ at 85% as compared to other mandated Kharif crops for marketing season 2021-22 (as announced by the Cabinet Committee on Economic Affairs in June 2021).

- Ans 1. Bajra
 2. Tur (Arhar)
 3. Moong
 4. Urad

Question ID : 65497834357
 Status : Not Answered
 Chosen Option : --

Q.19 Who among the following is the author of the book 'The Third Pillar: How Markets and The State Leave the Community Behind'?

- Ans 1. Raghuram Rajan
 2. Ruchir Sharma
 3. Jairam Ramesh
 4. P Chidambaram

Question ID : 65497834338
 Status : Not Answered
 Chosen Option : --

Q.20 The Khalji and Tughluq rulers had appointed military commanders as governors of territories. These lands were called:

- Ans 1. samanta
 2. muqti
 3. iqtadar
 4. iqta

Question ID : 65497834349
 Status : Answered
 Chosen Option : 4

Q.21 Who among the following was elected as the first President of Hockey India from north-east India in November 2020?

- Ans 1. Gyanendro Ningombam
 2. Chinglensana Singh
 3. Kothajit Singh
 4. Mohd Mushtaque Ahmad

Question ID : 65497834334
 Status : Answered
 Chosen Option : 1

Q.22 Tea and Coffee are grown in _____ soil.

- Ans 1. laterite
 2. alluvial
 3. black
 4. arid

Question ID : 65497834347
 Status : Answered
 Chosen Option : 1

Q.23 As per the Economic Survey of India 2020-2021, which state is NOT showing gain in its forest cover?

- Ans
- 1. Karnataka
 - 2. Andhra Pradesh
 - 3. Arunachal Pradesh
 - 4. Kerala

Question ID : 65497834333
Status : Answered
Chosen Option : 2

Q.24 Krishnadevaraya, who reigned over Vijayanagar from 1509 to 1529, belonged to the:

- Ans
- 1. Saluva dynasty
 - 2. Tuluva dynasty
 - 3. Sangama dynasty
 - 4. Aravidu dynasty

Question ID : 65497834346
Status : Answered
Chosen Option : 3

Q.25 Which Article of the Constitution of India provides Fundamental Duties?

- Ans
- 1. Article 18
 - 2. Article 81
 - 3. Article 51A
 - 4. Article 21A

Question ID : 65497834339
Status : Answered
Chosen Option : 3

Section : Part C Elementary Mathematics

Q.1 The cost price of 21 articles is equal to the selling price of 15 articles. Find the gain or loss percentage.

- Ans
- 1. 23% loss
 - 2. $22\frac{1}{7}\%$ gain
 - 3. 15% loss
 - 4. 40% gain

Question ID : 65497834376
Status : Answered
Chosen Option : 4

Q.2 What is the sum of the digits of the least number which when divided by 12, 16 and 20 leaves the same remainder 6 in each case and it is divisible by 9?

- Ans
- 1. 14
 - 2. 18
 - 3. 12
 - 4. 16

Question ID : 65497834360
Status : Answered
Chosen Option : 2

Q.3 A shopkeeper bought an item for ₹4,500 and sold it at a loss of 5%. From this money, he bought another item and sold it at a profit of 10%. What is his overall profit?

- Ans**
- 1. ₹280.50
 - 2. ₹202.50
 - 3. ₹210
 - 4. ₹220

Question ID : 65497834378
Status : Answered
Chosen Option : 2

Q.4 Find the value of $5 \times [6 \times 2\{3 \times 7 \div (5 \times 3)\}]$.

- Ans**
- 1. 126
 - 2. 84
 - 3. 104
 - 4. 92

Question ID : 65497834375
Status : Answered
Chosen Option : 2

Q.5 If the simple interest charged for 9 months be 0.12 times the money borrowed, what is the rate percent per year?

- Ans**
- 1. 15%
 - 2. 18%
 - 3. 16%
 - 4. 12%

Question ID : 65497834366
Status : Answered
Chosen Option : 3

Q.6 If the ratio of three numbers A, B and C is 2 : 3 : 5, and the sum of the squares of these numbers is 3800, then the value of C is:

- Ans**
- 1. 30
 - 2. 40
 - 3. 50
 - 4. 20

Question ID : 65497834371
Status : Answered
Chosen Option : 3

Q.7 If diagonal of a cube is $\sqrt{108}$ cm, then the volume (in cm^3) of the cube is:

- Ans**
- 1. 214
 - 2. 216
 - 3. 228
 - 4. 226

Question ID : 65497834372
Status : Answered
Chosen Option : 2

Q.8 The average speed of a train is 180% of the average speed of a car. The car covers a distance of 990 km in 15 hours. The time taken (in hours) by the train to cover the distance of 891 km is:

Ans

1. $9\frac{1}{2}$

2. $7\frac{1}{2}$

3. $6\frac{1}{2}$

4. $5\frac{1}{2}$

Question ID : 65497834370

Status : Answered

Chosen Option : 2

Q.9 A dealer allows his customers a discount of 20% and still gains 20%. If the cost price of an article is ₹960, what is its marked price (in ₹)?

Ans

1. 1,280

2. 1,152

3. 1,440

4. 1,600

Question ID : 65497834363

Status : Answered

Chosen Option : 3

Q.10 When 'x' is subtracted from each of the numbers 22, 39, 56 and 107, then the resulting numbers, in this order, are in proportion. What is the mean proportional between $(x + 3)$ and $(3x - 7)$?

Ans

1. 8

2. 12

3. 14

4. 10

Question ID : 65497834380

Status : Answered

Chosen Option : 1

Q.11 In a cricket test match, Anuj completed his double century with 15 sixes and 18 fours. What percentage of runs did he make by running between the wickets to complete the double century?

Ans

1. 19%

2. 22%

3. 24.5%

4. 16.5%

Question ID : 65497834364

Status : Answered

Chosen Option : 1

Q.12 If two numbers are 12% and 48% of a third number, what percentage is the first number of the second number?

- Ans**
- 1. 30%
 - 2. 20%
 - 3. 25%
 - 4. 15%

Question ID : 65497834374

Status : Answered

Chosen Option : 3

Q.13 A machine can complete double the work that a man can complete in a given period of time. To complete a work, 10 machines and 5 men take 60 days. If there were 10 men and 5 machines, then the time it would have taken to complete the work is:

- Ans**
- 1. 90 days
 - 2. 84 days
 - 3. 68 days
 - 4. 75 days

Question ID : 65497834377

Status : Answered

Chosen Option : 4

Q.14 4 men and 4 women can complete a work in 5 days, while 2 men and 5 women can finish it in 6 days. How much time (in days) will be taken by 1 woman working alone and 1 man working all by himself to complete the work, respectively?

- Ans**
- 1. 20 and 36
 - 2. 45 and 36
 - 3. 36 and 45
 - 4. 36 and 20

Question ID : 65497834367

Status : Answered

Chosen Option : 2

Q.15 ₹9,500 is divided among three friends A, B and C such that B gets 75% of the amount that A gets and the ratio between A and C's shares is 8 : 5. The amount (in ₹) that B gets is:

- Ans**
- 1. 4,000
 - 2. 3,000
 - 3. 6,000
 - 4. 2,500

Question ID : 65497834365

Status : Answered

Chosen Option : 2

Q.16 The radius of the base of a solid right circular cylinder is 10.5 cm and its volume is 5197.5 cm^3 . What is the total surface area (in cm^2) of the cylinder? (Take $\pi = \frac{22}{7}$)

- Ans**
- 1. 1584
 - 2. 1683
 - 3. 1605
 - 4. 1749

Question ID : 65497834382
Status : Answered
Chosen Option : 2

Q.17 The average weight of the students in a class is 56 kg. If five more students whose average weight is 58 kg, join the class, the average weight of the students increases by 0.5 kg. What was the original number of students in the class?

- Ans**
- 1. 18
 - 2. 20
 - 3. 25
 - 4. 15

Question ID : 65497834361
Status : Answered
Chosen Option : 4

Q.18 The LCM and HCF of two numbers are 1920 and 4, respectively. One of the numbers is 60. Find the other number.

- Ans**
- 1. 128
 - 2. 124
 - 3. 88
 - 4. 120

Question ID : 65497834373
Status : Answered
Chosen Option : 1

Q.19 The average age of 10 members of a family is 29 years. If the youngest members are twins and each is 5 years old, what was the average age (in years) of the family members at the time of birth of the twins?

- Ans**
- 1. 28
 - 2. 30
 - 3. 31
 - 4. 32

Question ID : 65497834362
Status : Answered
Chosen Option : 1

Q.20 A train, 250 m long, passes a railway platform 200 m long, in 45 s with a uniform speed. What is the time (in seconds) taken by the train to pass a man cycling in the direction of the train at a speed of 6 km/h?

- Ans**
- 1. 30
 - 2. 62.5
 - 3. 21
 - 4. 54

Question ID : 65497834368
Status : Answered

Q.21

The expression $\frac{5\frac{5}{8}}{6\frac{7}{8}}$ of $\frac{6\frac{7}{11}}{9\frac{1}{8}} \div \frac{8}{9} \left(2\frac{3}{11} + \frac{13}{22} \right)$ of $\frac{9}{5}$ equals to:

Ans

1. $\frac{11}{36}$
 2. $\frac{5}{36}$
 3. $\frac{1}{36}$
 4. $\frac{25}{36}$

Question ID : 65497834369

Status : Answered

Chosen Option : 2

Q.22 By selling an item for ₹3,750 a shopkeeper earned 25% profit. If the item had been sold for ₹300 more, then what would have been the profit percentage of the shopkeeper?

Ans

1. 32
 2. 37.5
 3. 35
 4. 36

Question ID : 65497834358

Status : Answered

Chosen Option : 3

Q.23 A shopkeeper marks his goods 40% above their cost price. He sells 60% of the goods at the marked price and the remaining at 65% discount on the marked price. His gain/loss in the whole transaction is:

Ans

1. gain, 3.6%
 2. gain, 9.6%
 3. loss, 3.6%
 4. loss, 9.6%

Question ID : 65497834379

Status : Answered

Chosen Option : 1

Q.24 A sum of ₹10,000 amounts to ₹13,225 in 2 years at a certain rate per cent per annum, when the interest is compounded annually. What will be the interest (in ₹) on the same sum for the same time at the same rate, when the interest is compounded 8-monthly?

Ans

1. 3,350
 2. 3,360
 3. 3,310
 4. 3,290

Question ID : 65497834381

Status : Answered

Chosen Option : 3

Q.25 A sum of money lent at simple interest amounts to ₹7,920 in 2 years and to ₹11,220 after 5 more years. What is the rate of interest per annum?

- Ans**
- 1. 10%
 - 2. 9.85%
 - 3. 12%
 - 4. 17.5%

Question ID : 65497834359
Status : Answered
Chosen Option : 1

Section : Part D English

Q.1 Select the most appropriate synonym of the given word.

SUSTAIN (V)

- Ans**
- 1. Believe
 - 2. Weaken
 - 3. Suspect
 - 4. Support

Question ID : 65497834401
Status : Answered
Chosen Option : 4

Q.2 Select the most appropriate option to fill in the blank.

Disasters expose the most _____ section of society to grave danger.

- Ans**
- 1. equitable
 - 2. sustainable
 - 3. vulnerable
 - 4. potable

Question ID : 65497834387
Status : Answered
Chosen Option : 3

Q.3 Select the most appropriate ANTONYM of the given word.

Just

- Ans**
- 1. Blur
 - 2. Fail
 - 3. Conclude
 - 4. Corrupt

Question ID : 65497834385
Status : Answered
Chosen Option : 4

Q.4 Select the option that can be used as a one-word substitute for the given group of words.

Sound made by a horse

- Ans
- 1. Bray
 - 2. Bark
 - 3. Growl
 - 4. Neigh

Question ID : 65497834384
Status : Answered
Chosen Option : 4

Q.5 The following sentence has been split into four segments. Identify the segment that contains a grammatical error.

Its matter of great concern / for the authorities that / despite all the efforts, / the number of patients is increasing.

- Ans
- 1. the number of patients is increasing
 - 2. despite all the efforts
 - 3. for the authorities that
 - 4. Its matter of great concern

Question ID : 65497834388
Status : Answered
Chosen Option : 4

Q.6 Select the correctly spelt word.

- Ans
- 1. Mathematiks
 - 2. Mathematics
 - 3. Mathemetics
 - 4. Maethematics

Question ID : 65497834386
Status : Answered
Chosen Option : 2

Q.7 Select the most appropriate ANTONYM of the given word.

Delicious

- Ans
- 1. Satisfactory
 - 2. Sweet
 - 3. Distasteful
 - 4. Tasteful

Question ID : 65497834389
Status : Answered
Chosen Option : 3

Q.8 Select the most appropriate option that can substitute the underlined word in the given sentence. If there is no need to substitute it, select 'No substitution required'.

Despite play very well, we lost the match.

- Ans
- 1. No substitution required
 - 2. Despite of our playing
 - 3. Despite playing
 - 4. Despite of us playing

Question ID : 65497834397
Status : Answered
Chosen Option : 3

Q.9 Select the option that can be used as a one-word substitute for the given group of words.

Person who is the natural successor to ancestral property

- Ans
- 1. Extrovert
 - 2. Heretic
 - 3. Interlocutor
 - 4. Heir

Question ID : 65497834390
Status : Answered
Chosen Option : 4

Q.10 Select the most appropriate option to fill in the blank.

The ticket gives _____ travel on city buses for as little as ₹100.

- Ans
- 1. never-ending
 - 2. uncontrolled
 - 3. infinite
 - 4. unlimited

Question ID : 65497834398
Status : Answered
Chosen Option : 1

Q.11 The following sentence has been divided into parts. One of them may contain an error. Select the part that contains the error from the given options. If you don't find any error, mark 'No error' as your answer.

Did you knew / that there will be / a pay hike soon?

- Ans
- 1. a pay hike soon
 - 2. No error
 - 3. that there will be
 - 4. Did you knew

Question ID : 65497834400
Status : Answered
Chosen Option : 4

Q.12 Select the **INCORRECTLY** spelt word.

- Ans 1. Gullible
 2. Dissimulation
 3. Magnanemous
 4. Indecisiveness

Question ID : 65497834391
Status : Answered
Chosen Option : 3

Q.13 Select the most appropriate meaning of the given idiom.

To spill the beans

- Ans 1. To work very hard
 2. To give away a secret
 3. To throw away something important
 4. To do something very difficult

Question ID : 65497834399
Status : Answered
Chosen Option : 2

Q.14 Select the most appropriate synonym of the given word.

Sullen

- Ans 1. Dazzling
 2. Smart
 3. Bright
 4. Grim

Question ID : 65497834393
Status : Answered
Chosen Option : 4

Q.15 The following sentence has been split into four segments. Identify the segment that contains a grammatical error.

The examinations / will be pushed back / so that candidates get additional time / for prepare.

- Ans 1. so that candidates get additional time
 2. will be pushed back
 3. The examinations
 4. for prepare

Question ID : 65497834392
Status : Answered
Chosen Option : 4

Q.16 Select the most appropriate meaning of the given idiom.

To take up the gauntlet

- Ans
- 1. To face failure
 - 2. To deny the challenge
 - 3. To accept a challenge
 - 4. To suffer humiliation

Question ID : 65497834395

Status : Answered

Chosen Option : 3

Q.17 Select the most appropriate option that can substitute the underlined segment in the given sentence. If there is no need to substitute it, select 'No substitution required'.

This is the garage when I get my car repaired.

- Ans
- 1. wherever
 - 2. where
 - 3. No substitution required
 - 4. whenever

Question ID : 65497834383

Status : Answered

Chosen Option : 2

Q.18 Select the most appropriate option that can substitute the underlined word in the given sentence. If there is no need to substitute it, select 'No substitution required'.

Either Sumit or Amit will give their assistance in unloading the goods from the truck.

- Ans
- 1. his
 - 2. No substitution required
 - 3. your
 - 4. its

Question ID : 65497834396

Status : Answered

Chosen Option : 1

Q.19 Select the most appropriate option to fill in the blank.

She found herself in an _____ situation and left quickly.

- Ans
- 1. abstract
 - 2. awkward
 - 3. obvious
 - 4. elegant

Question ID : 65497834394

Status : Answered

Chosen Option : 2

Q.20 Select the option that can be used as a one-word substitute for the given group of words.

A solemn promise

- Ans 1. Salute
 2. Contract
 3. Pledge
 4. Tribute

Question ID : 65497834402
 Status : Answered
 Chosen Option : 3

Comprehension:

In the following passage, some words have been deleted. Read the passage carefully and select the most appropriate option to fill in each blank.

Modern scientific and technological developments in the practice of medicine and public health (1)_____ nursing into new and wider fields of activity, and its functions have been expanded (2)_____. Therefore, nursing is no longer limited mainly to activities within the hospital. It has also become (3)_____ in which prevention and rehabilitation are a vital part of its program. The modern concept of nursing considers the hospital, (4)_____ central, as only one of (5)_____ in the community.

SubQuestion No : 21

Q.21 Select the most appropriate option to fill in blank no. 1.

- Ans 1. had drawn
 2. are drawn
 3. drew
 4. are drawing

Question ID : 65497834404
 Status : Answered
 Chosen Option : 4

Comprehension:

In the following passage, some words have been deleted. Read the passage carefully and select the most appropriate option to fill in each blank.

Modern scientific and technological developments in the practice of medicine and public health (1)_____ nursing into new and wider fields of activity, and its functions have been expanded (2)_____. Therefore, nursing is no longer limited mainly to activities within the hospital. It has also become (3)_____ in which prevention and rehabilitation are a vital part of its program. The modern concept of nursing considers the hospital, (4)_____ central, as only one of (5)_____ in the community.

SubQuestion No : 22

Q.22 Select the most appropriate option to fill in blank no. 2.

- Ans 1. respectively
 2. accordingly
 3. naturally
 4. consistently

Question ID : 65497834405
 Status : Answered
 Chosen Option : 4

Comprehension:

In the following passage, some words have been deleted. Read the passage carefully and select the most appropriate option to fill in each blank.

Modern scientific and technological developments in the practice of medicine and public health (1)_____ nursing into new and wider fields of activity, and its functions have been expanded (2)_____. Therefore, nursing is no longer limited mainly to activities within the hospital. It has also become (3)_____ in which prevention and rehabilitation are a vital part of its program. The modern concept of nursing considers the hospital, (4)_____ central, as only one of (5)_____ in the community.

SubQuestion No : 23

Q.23 Select the most appropriate option to fill in blank no. 3.

- Ans
- 1. community services
 - 2. the community service
 - 3. a community service
 - 4. community service

Question ID : 65497834406
Status : Answered
Chosen Option : 3

Comprehension:

In the following passage, some words have been deleted. Read the passage carefully and select the most appropriate option to fill in each blank.

Modern scientific and technological developments in the practice of medicine and public health (1)_____ nursing into new and wider fields of activity, and its functions have been expanded (2)_____. Therefore, nursing is no longer limited mainly to activities within the hospital. It has also become (3)_____ in which prevention and rehabilitation are a vital part of its program. The modern concept of nursing considers the hospital, (4)_____ central, as only one of (5)_____ in the community.

SubQuestion No : 24

Q.24 Select the most appropriate option to fill in blank no. 4.

- Ans
- 1. whenever
 - 2. however
 - 3. wherever
 - 4. whatever

Question ID : 65497834407
Status : Answered
Chosen Option : 2

Comprehension:

In the following passage, some words have been deleted. Read the passage carefully and select the most appropriate option to fill in each blank.

Modern scientific and technological developments in the practice of medicine and public health (1)_____ nursing into new and wider fields of activity, and its functions have been expanded (2)_____. Therefore, nursing is no longer limited mainly to activities within the hospital. It has also become (3)_____ in which prevention and rehabilitation are a vital part of its program. The modern concept of nursing considers the hospital, (4)_____ central, as only one of (5)_____ in the community.

SubQuestion No : 25

Q.25 Select the most appropriate option to fill in blank no. 5.

- Ans
- 1. the many agency
 - 2. the many agencies
 - 3. many agency
 - 4. many agencies

Question ID : 65497834408
Status : Answered
Chosen Option : 2

Section : Part D Hindi

Q.1 दिए गए वाक्यांश के लिए एक शब्द का चयन करें:

असाधारण मेधा बुद्धि वाला

- Ans
- 1. महाज्ञानी
 - 2. मेधावी
 - 3. बुद्धिशाली
 - 4. बुद्धिमान

Question ID : 65497834417
Status : Not Answered
Chosen Option : --

Q.2 'सुर' का पर्यायवाची है-

- Ans
- 1. देवता
 - 2. सूर्य
 - 3. राक्षस
 - 4. सुरग

Question ID : 65497834426
Status : Not Answered
Chosen Option : --

Q.3 रिक्त स्थान की पूर्ति करने के लिए सर्वाधिक उपयुक्त विकल्प का चयन करें।

बारात का _____ किया गया।

- Ans
- 1. अभिवादन
 - 2. समापन
 - 3. स्वागत
 - 4. आवभगत

Question ID : 65497834428
Status : Not Answered
Chosen Option : --

Q.4 अशुद्ध वर्तनी वाले शब्द का चयन करें।

- Ans
- 1. कनिष
 - 2. कौतूहल
 - 3. महाराजा
 - 4. दयालु

Question ID : 65497834414
Status : Not Answered
Chosen Option : --

Q.5 रिक्त स्थान की पूर्ति करने के लिए सर्वाधिक उपयुक्त शब्द का चयन कीजिए।

नाटक _____ पर खेला जाता है।

- Ans 1. रगमच
 2. चौराहे
 3. मच
 4. मेज

Question ID : 65497834409
 Status : Not Answered
 Chosen Option : --

Q.6 दिए गए वाक्य का वह भाग ज्ञात करें जिसमें कोई त्रुटि है। यदि कोई त्रुटि नहीं है, तो 'कोई त्रुटि नहीं है' चुनें।

बुरा से बुरा (1)/ आदमी यह (2)/ कहता है। (3)/ कोई त्रुटि नहीं है (4)

- Ans 1. 3
 2. 2
 3. 1
 4. 4

Question ID : 65497834410
 Status : Not Answered
 Chosen Option : --

Q.7 सही वर्तनी वाले शब्द का चयन करें।

- Ans 1. शुषुम्ना
 2. सुषुम्ना
 3. शुसुम्ना
 4. सुशुम्ना

Question ID : 65497834413
 Status : Not Answered
 Chosen Option : --

Q.8 दिए गए शब्द के समानार्थी शब्द का चयन कीजिए।

अटवी

- Ans 1. जगल
 2. अडिग
 3. अचल
 4. अटल

Question ID : 65497834411
 Status : Not Answered
 Chosen Option : --

Q.9 दिए गए वाक्य के किस भाग में त्रुटि है?

भारत में अनेक प्रदेशिक भाषाएँ हैं।

- Ans
- 1. प्रदेशिक
 - 2. भारत में
 - 3. अनेक
 - 4. भाषाएँ हैं।

Question ID : 65497834425
Status : Not Answered
Chosen Option : --

Q.10 दिए गए वाक्यांश के लिए एक शब्द का चयन करें:

विस्थापित लोगो को पुनः बसाना

- Ans
- 1. पुनर्वा
 - 2. पुनरावृत्ति
 - 3. पुनर्वास
 - 4. पुनरुक्ति

Question ID : 65497834424
Status : Not Answered
Chosen Option : --

Q.11 दिए गए शब्द का विलोम चुने –

उर्वरा

- Ans
- 1. ऊसर
 - 2. मोक्ष
 - 3. क्षुद्र
 - 4. सपन्न

Question ID : 65497834423
Status : Not Answered
Chosen Option : --

Q.12 दिए गए वाक्य में रेखांकित खंड को प्रतिस्थापित करने के लिए सर्वाधिक उपयुक्त विकल्प का चयन करें। यदि इसे प्रतिस्थापित करने की आवश्यकता नहीं है, तो विकल्प 'किसी बदलाव की आवश्यकता नहीं है' का चयन करें।

सुधा भूख में बेचैन है।

- Ans
- 1. भूख के
 - 2. भूख में
 - 3. भूख से
 - 4. किसी बदलाव की आवश्यकता नहीं है।

Question ID : 65497834412
Status : Not Answered
Chosen Option : --

Q.13 'गले का हार होना' मुहावरे का सही अर्थ है-

- Ans 1. समस्या पैदा करना
 2. बहुत प्यारा होना
 3. बहुत कीमती होना
 4. गहरी मित्रता होना

Question ID : 65497834427

Status : Not Answered

Chosen Option : --

Q.14 निम्नलिखित प्रश्न में, दिए गए चार विकल्पों में से उस विकल्प का चयन करें, जो मुहावरे के सही अर्थ को व्यक्त करता है।

पहाड़ टूटना

- Ans 1. भारी विपत्ति आना
 2. विपत्ति के समय कोई साथ न देना
 3. पहाड़ टूट कर गिरना
 4. खूब लाभ उठाना

Question ID : 65497834416

Status : Not Answered

Chosen Option : --

Q.15 दिए गए वाक्य का वह भाग ज्ञात करें जिसमें कोई त्रुटि है। यदि कोई त्रुटि नहीं है, तो 'कोई त्रुटि नहीं है' चुनें।

आपसी मनमुटाव को सामने - आमने बैठकर बातचीत से दूर करें।

- Ans 1. बातचीत से दूर करें।
 2. कोई त्रुटि नहीं है।
 3. सामने - आमने बैठकर
 4. आपसी मनमुटाव को

Question ID : 65497834422

Status : Not Answered

Chosen Option : --

Q.16 रिक्त स्थान की पूर्ति करने के लिए सर्वाधिक उपयुक्त शब्द का चयन करें।

लड़का बीमार है _____ पढ़ने नहीं आया।

- Ans 1. इससे
 2. क्योंकि
 3. इसलिए
 4. कदाचित्

Question ID : 65497834419

Status : Not Answered

Chosen Option : --

Q.17 दिए गए वाक्य में रेखांकित खंड को प्रतिस्थापित करने के लिए सर्वाधिक उपयुक्त विकल्प का चयन करें। यदि इसे प्रतिस्थापित करने की आवश्यकता नहीं है, तो विकल्प 'किसी बदलाव की आवश्यकता नहीं है' का चयन करें।

कई रेलवे के कर्मचारियों की गिरफ्तारी हुई।

- Ans
- 1. कईयों की रेलवे
 - 2. किसी बदलाव की आवश्यकता नहीं है।
 - 3. रेलवे के कई
 - 4. कई के रेलवे

Question ID : 65497834420

Status : Not Answered

Chosen Option : --

Q.18 दिए गए शब्द का विलोम चुनें।

क्रूर

- Ans
- 1. दयालु
 - 2. असुर
 - 3. विधुर
 - 4. निष्ठुर

Question ID : 65497834415

Status : Not Answered

Chosen Option : --

Q.19 निम्नलिखित प्रश्न में, दिए गए चार विकल्पों में से उस विकल्प का चयन करें, जो मुहावरे के सही अर्थ को व्यक्त करता है।

हाथ मलना-

- Ans
- 1. खो देना
 - 2. दोनों हाथों को मसलना
 - 3. हार मान लेना
 - 4. पछताना

Question ID : 65497834421

Status : Not Answered

Chosen Option : --

Q.20 दिए गए वाक्य में रेखांकित खंड को प्रतिस्थापित करने के लिए सर्वाधिक उपयुक्त विकल्प का चयन करें। यदि इसे प्रतिस्थापित करने की आवश्यकता नहीं है, तो विकल्प 'किसी बदलाव की आवश्यकता नहीं है' का चयन करें।

जगली जानवर, चिड़ियाघर में हमारे मनोरंजन ही करते हैं।

- Ans
- 1. किसी बदलाव की आवश्यकता नहीं है।
 - 2. हमारा मनोरंजन ही करते हैं।
 - 3. हमारे मनोरंजन ही करता हैं।
 - 4. हमारे मनोरंजन ही कर रहे हैं।

Question ID : 65497834418

Status : Not Answered

Chosen Option : --

Comprehension:

दिए गए गद्यांश में से कुछ शब्द हटा दिए गए हैं, दिए गए विकल्पों की सहायता से रिक्त स्थान की पूर्ति करें, प्रत्येक सख्खा के लिए सर्वाधिक उपयुक्त विकल्प का चयन करें।

सकारात्मक सोच व्यक्ति को (1) _____ की ओर ले जाती है। कहा भी जाता है कि मन के हारे हार है, मन के जीते (2) _____। जीवन एक संघर्ष है और इसका हमें (3) _____ होकर सामना करना चाहिए। सकारात्मक सोच से ऊर्जा प्राप्त होती है और हमारा (4) _____ बढ़ता है। निराशा हमें कमजोर बनाती है जबकि आशा नई (5) _____ दिखाती है।

SubQuestion No : 21

Q.21 गद्यांश के रिक्त स्थान (1) के लिए सर्वाधिक उपयुक्त शब्द होगा-

- Ans
- 1. असफलता
 - 2. पतन
 - 3. सफलता
 - 4. संघर्ष

Question ID : 65497834430

Status : Not Answered

Chosen Option : --

Comprehension:

दिए गए गद्यांश में से कुछ शब्द हटा दिए गए हैं, दिए गए विकल्पों की सहायता से रिक्त स्थान की पूर्ति करें, प्रत्येक सख्खा के लिए सर्वाधिक उपयुक्त विकल्प का चयन करें।

सकारात्मक सोच व्यक्ति को (1) _____ की ओर ले जाती है। कहा भी जाता है कि मन के हारे हार है, मन के जीते (2) _____। जीवन एक संघर्ष है और इसका हमें (3) _____ होकर सामना करना चाहिए। सकारात्मक सोच से ऊर्जा प्राप्त होती है और हमारा (4) _____ बढ़ता है। निराशा हमें कमजोर बनाती है जबकि आशा नई (5) _____ दिखाती है।

SubQuestion No : 22

Q.22 गद्यांश के रिक्त स्थान (2) के लिए सर्वाधिक उपयुक्त शब्द होगा-

- Ans
- 1. आनंद
 - 2. पीड़ा
 - 3. प्रसन्नता
 - 4. जीत

Question ID : 65497834431

Status : Not Answered

Chosen Option : --

Comprehension:

दिए गए गद्यांश में से कुछ शब्द हटा दिए गए हैं, दिए गए विकल्पों की सहायता से रिक्त स्थान की पूर्ति करें, प्रत्येक सख्खा के लिए सर्वाधिक उपयुक्त विकल्प का चयन करें।

सकारात्मक सोच व्यक्ति को (1) _____ की ओर ले जाती है। कहा भी जाता है कि मन के हारे हार है, मन के जीते (2) _____। जीवन एक संघर्ष है और इसका हमें (3) _____ होकर सामना करना चाहिए। सकारात्मक सोच से ऊर्जा प्राप्त होती है और हमारा (4) _____ बढ़ता है। निराशा हमें कमजोर बनाती है जबकि आशा नई (5) _____ दिखाती है।

SubQuestion No : 23

Q.23 गद्यांश के रिक्त स्थान (3) के लिए सर्वाधिक उपयुक्त शब्द होगा-

- Ans
- 1. लापरवाह
 - 2. बेपरवाह
 - 3. निडर
 - 4. भयभीत

Question ID : 65497834432

Status : Not Answered

Chosen Option : --

Comprehension:

दिए गए गद्यांश में से कुछ शब्द हटा दिए गए हैं, दिए गए विकल्पों की सहायता से रिक्त स्थान की पूर्ति करें, प्रत्येक सख्या के लिए सर्वाधिक उपयुक्त विकल्प का चयन करें।

सकारात्मक सोच व्यक्ति को (1) _____ की ओर ले जाती है। कहा भी जाता है कि मन के हारे हार है, मन के जीते (2) _____। जीवन एक संघर्ष है और इसका हमें (3) _____ होकर सामना करना चाहिए। सकारात्मक सोच से ऊर्जा प्राप्त होती है और हमारा (4) _____ बढ़ता है। निराशा हमें कमजोर बनाती है जबकि आशा नई (5) _____ दिखाती है।

SubQuestion No : 24

Q.24 गद्यांश के रिक्त स्थान (4) के लिए सर्वाधिक उपयुक्त शब्द होगा-

- Ans
- 1. दायरा
 - 2. साम्राज्य
 - 3. आत्मविश्वास
 - 4. कार्य

Question ID : 65497834433

Status : Not Answered

Chosen Option : --

Comprehension:

दिए गए गद्यांश में से कुछ शब्द हटा दिए गए हैं, दिए गए विकल्पों की सहायता से रिक्त स्थान की पूर्ति करें, प्रत्येक सख्या के लिए सर्वाधिक उपयुक्त विकल्प का चयन करें।

सकारात्मक सोच व्यक्ति को (1) _____ की ओर ले जाती है। कहा भी जाता है कि मन के हारे हार है, मन के जीते (2) _____। जीवन एक संघर्ष है और इसका हमें (3) _____ होकर सामना करना चाहिए। सकारात्मक सोच से ऊर्जा प्राप्त होती है और हमारा (4) _____ बढ़ता है। निराशा हमें कमजोर बनाती है जबकि आशा नई (5) _____ दिखाती है।

SubQuestion No : 25

Q.25 गद्यांश के रिक्त स्थान (5) के लिए सर्वाधिक उपयुक्त शब्द होगा-

- Ans
- 1. राह
 - 2. दुनिया
 - 3. बात
 - 4. जीवन

Question ID : 65497834434

Status : Not Answered

Chosen Option : --

Exam Date	23/11/2021
Exam Time :	4:00 PM - 5:30 PM
Subject	Constable GD 2021

Section : Part A General Intelligence and Reasoning

Q.1 Eight officers A, B, C, D, E, F, G and H are attending a meeting sitting clockwise around a circular table in the same sequence. All are facing the centre of the table and have equal distances between them. If D is facing the north-west direction, in which direction is F sitting?

- Ans 1. South-west
 2. North-east
 3. South-east
 4. North-west

Question ID : 65497829121
 Status : Answered
 Chosen Option : 2

Q.2 In a certain code language, 'READY' is written as 'IVZWB'. How will 'PERFORM' be written in that language?

- Ans 1. KVPREFJ
 2. RPLIFIRE
 3. KVIULIN
 4. LORPREFI

Question ID : 65497829108
 Status : Answered
 Chosen Option : 3

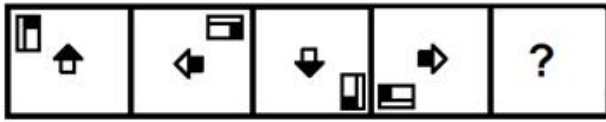
Q.3 Select the correct option that indicates the arrangement of the given words in the order in which they appear in an English dictionary.

1. Rotate
2. Rose
3. Resolute
4. Repair
5. Recreate

- Ans 1. 4, 5, 3, 2, 1
 2. 5, 4, 3, 1, 2
 3. 5, 4, 3, 2, 1
 4. 1, 4, 3, 2, 5

Question ID : 65497829113
 Status : Answered
 Chosen Option : 3

Q.4 Select the figure that will come next in the following figure series.



Ans

- 1.
- 2.
- 3.
- 4.

Question ID : 65497829116
 Status : Answered
 Chosen Option : 3

Q.5 Select the option that is related to the fourth number in the same way as the first number is related to the second number and the fifth number is related to the sixth number.

9 : 44001 :: ? : 46521 :: 14 : 55211

- 1. 14
- 2. 18
- 3. 20
- 4. 10

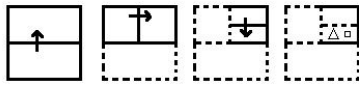
Question ID : 65497829122
 Status : Answered
 Chosen Option : 2

Q.6 'Tailor' is related to 'Dress' in the same way as 'Cobbler' is related to '_____'. .

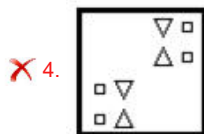
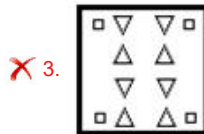
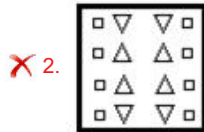
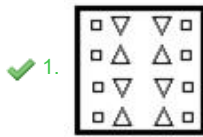
- 1. Shoes
- 2. Cycle
- 3. Furniture
- 4. Building

Question ID : 65497829118
 Status : Answered
 Chosen Option : 3

Q.7 The sequence of folding a piece of paper and the manner in which the folded paper has been cut is shown in the following figures. How would this paper look when unfolded?



Ans



Question ID : 65497829112

Status : Answered

Chosen Option : 1

Q.8 Seven friends S, T, U, V, W, X and Y, are sitting around a circle with their backs towards the centre. There are three persons between Y and V. W is sitting to the immediate right of V. U is sitting between Y and X. T is not the neighbour of W or Y. S is the neighbour of W. Who is sitting between V and X?

Ans ✓ 1. T

✗ 2. S

✗ 3. Y

✗ 4. U

Question ID : 65497829119

Status : Answered

Chosen Option : 1

Q.9 Vishal is the husband of Narmada. Pratik is the brother of Gaurvi. Kartik is the son of Prathmesh, who is the husband of Arti. Arti's son is married to Narmada. Gaurvi is the daughter of Vishal. How is Prathmesh related to Gaurvi?

Ans ✗ 1. Paternal uncle

✗ 2. Maternal grandfather

✗ 3. Maternal uncle

✓ 4. Paternal grandfather

Question ID : 65497829103

Status : Answered

Chosen Option : 4

Q.10 In a certain code language, 'TARGET' is coded as '219752' and 'PRIZE' is coded as '79985'. How will 'QUEEN' be coded in that language?

- Ans
- 1. 73554
 - 2. 83555
 - 3. 83225
 - 4. 82554

Question ID : 65497829105
 Status : Answered
 Chosen Option : 2

Q.11 Select the letter-cluster from among the given options that can replace the question mark (?) in the following series.

MLW, JJV, GHU, ?

- Ans
- 1. EGR
 - 2. DFT
 - 3. FFS
 - 4. GET

Question ID : 65497829117
 Status : Answered
 Chosen Option : 2

Q.12 A cube is made by folding the given sheet. In the cube so formed, what would be the letter on the opposite side of the letter 'A'?



- Ans
- 1. D
 - 2. C
 - 3. B
 - 4. F

Question ID : 65497829124
 Status : Answered
 Chosen Option : 2

Q.13 Select the option that is embedded in the given figure (rotation is NOT allowed).



Ans

- 1.
- 2.
- 3.
- 4.

Question ID : 65497829125
 Status : Answered
 Chosen Option : 4

Q.14 Select the number from among the given options that can replace the question mark (?) in the following series.

40, 46, 58, 82, 130, ?

- Ans
- 1. 206
 - 2. 226
 - 3. 174
 - 4. 166

Question ID : 65497829115
 Status : Answered
 Chosen Option : 2

Q.15 Select the option that is related to the third term in the same way as the second term is related to the first term.

NOSE : ENOS :: PROUD : ?

- Ans
- 1. DOPRU
 - 2. DUROP
 - 3. OUPDR
 - 4. RPUOD

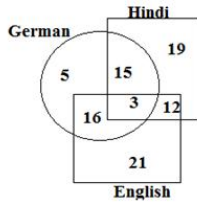
Question ID : 65497829101
 Status : Answered
 Chosen Option : 1

Q.16 Four letter-clusters have been given, out of which three are alike in some manner and one is different. Select the letter-cluster that is different.

- Ans
- 1. KNQTW
 - 2. CGILN
 - 3. DGJMP
 - 4. PSVYB

Question ID : 65497829104
 Status : Answered
 Chosen Option : 2

Q.17 The given diagram shows the number of students who know different languages (Hindi, English and German).



What is the number of students who know English and German both but do NOT know Hindi?

- Ans
- 1. 3
 - 2. 12
 - 3. 15
 - 4. 16

Question ID : 65497829120

Status : Answered

Chosen Option : 4

Q.18 Read the given statements and conclusions carefully. Assuming that the information given in the statements is true, even if it appears to be at variance with commonly known facts, decide which of the given conclusions logically follow(s) from the statements.

Statements:

1. All needles are papers.
2. Some needles are knives.

Conclusions:

- I. Some knives are papers.
- II. No paper is a knife.

- Ans
- 1. Both the conclusions follow
 - 2. Only conclusion I follows
 - 3. Only conclusion II follows
 - 4. Neither conclusion I nor II follows

Question ID : 65497829109

Status : Answered

Chosen Option : 2

Q.19 What will be the value of the given expression if 'A' means '+', 'B' means '-', 'C' means 'x', and 'D' means '÷'?

$$27 \text{ D } 3 \text{ A } 5 \text{ A } (9 \text{ C } 6) \text{ B } 15 \text{ A } (14 \text{ B } 11) \text{ C } 6 = ?$$

- Ans
- 1. 81
 - 2. 71
 - 3. 43
 - 4. 54

Question ID : 65497829123

Status : Answered

Chosen Option : 2

Q.20 Select the correct mirror image of the given combination when the mirror is placed at the right side.

8 5 6 w q a

Ans

✓ 1. 8 p w ɒ ɔ̄ 8

✗ 2. 8 p w ɒ 9 8

✗ 3. 8 b w 9 ɔ̄ 8

✗ 4. a p m ɒ ɔ̄ 8

Question ID : 65497829107

Status : Answered

Chosen Option : 1

Q.21 Select the number from among the given options that can replace the question mark (?) in the following series.

7, 14, 17, 68, 73, ?

Ans

✗ 1. 408

✓ 2. 438

✗ 3. 528

✗ 4. 432

Question ID : 65497829106

Status : Answered

Chosen Option : 2

Q.22 The total of the salary of Mandeep and Swati is ₹85,000. The total of the salary of Swati and Yukti is ₹60,000. If Swati's salary is ₹10,000 more than the salary of Yukti, then what is the salary of Mandeep?

Ans

✗ 1. ₹25,000

✗ 2. ₹35,000

✗ 3. ₹40,000

✓ 4. ₹50,000

Question ID : 65497829111

Status : Answered

Chosen Option : 4

Q.23 Select the option in which the numbers are related in the same way as are the numbers in the given set.

(9, 45, 10)

Ans

✗ 1. (5, 75, 26)

✗ 2. (7, 40, 12)

✓ 3. (8, 72, 18)

✗ 4. (6, 85, 22)

Question ID : 65497829110

Status : Answered

Chosen Option : 3

Q.24 In a certain code language, 'DUMP' is written as 'ETNQ' and 'EAGER' is written as 'DZHDS'. How will 'FINGER' be written in that language?

- Ans
- 1. HHOHDS
 - 2. IFGNRE
 - 3. GHOHDS
 - 4. GJOHQS

Question ID : 65497829102
 Status : Answered
 Chosen Option : 3

Q.25 Select the combination of letters that when sequentially placed in the blanks of the given series will complete the series.

G _ C T _ X _ T G X _ T _ X C T G _ C T

- Ans
- 1. T G C C G G
 - 2. X G C C G X
 - 3. X X C G G Y
 - 4. X G C C C G

Question ID : 65497829114
 Status : Answered
 Chosen Option : 2

Section : Part B General Knowledge and General Awareness

Q.1 Who is known as the founding father of macroeconomics?

- Ans
- 1. John Maynard Keynes
 - 2. Alfred Marshall
 - 3. Adam Smith
 - 4. Paul Samuelson

Question ID : 65497829144
 Status : Answered
 Chosen Option : 3

Q.2 The value of the Special Drawing Right (SDR) of the International Monetary Fund is determined by a basket of currencies consisting of _____ currencies.

- Ans
- 1. six
 - 2. five
 - 3. seven
 - 4. eight

Question ID : 65497829136
 Status : Not Answered
 Chosen Option : --

Q.3 India's first seaplane service was launched in October 2020 in:

- Ans
- 1. Karnataka
 - 2. Kerala
 - 3. Goa
 - 4. Gujarat

Question ID : 65497829141
 Status : Answered
 Chosen Option : 4

Q.4 Which of the following is a folk dance performed by the 'tea tribes' of Assam?

- Ans
- 1. Alkap
 - 2. Barao
 - 3. Domkach
 - 4. Jhumur

Question ID : 65497829130
Status : Answered
Chosen Option : 4

Q.5 During India's independence movement, who was the only President of the Indian National Congress who resigned from the presidency even after being elected?

- Ans
- 1. Dadabhai Naoroji
 - 2. Subhash Chandra Bose
 - 3. Abul Kalam Azad
 - 4. Vallabhbhai Patel

Question ID : 65497829140
Status : Answered
Chosen Option : 2

Q.6 Who among the following was one of the Congress leaders who drafted a Constitution for India in 1928?

- Ans
- 1. Motilal Nehru
 - 2. Jaipal Singh
 - 3. Somnath Lahiri
 - 4. Shyama Prasad Mukherjee

Question ID : 65497829142
Status : Answered
Chosen Option : 1

Q.7 When is Indian Army Day celebrated every year?

- Ans
- 1. 15 January
 - 2. 8 March
 - 3. 5 June
 - 4. 23 October

Question ID : 65497829143
Status : Answered
Chosen Option : 1

Q.8 In 1944, the Battle of Imphal was fought between the British Army and the _____ Army.

- Ans
- 1. Japanese
 - 2. Dutch
 - 3. Chinese
 - 4. French

Question ID : 65497829126
Status : Not Answered
Chosen Option : --

Q.9 Which of the following is an Arthropod?

- Ans 1. Liver fluke
 2. Millipede
 3. Snail
 4. Leech

Question ID : **65497829139**
 Status : **Not Answered**
 Chosen Option : --

Q.10 Which of the following is India's first river interlinking project?

- Ans 1. Palar - Bhavani
 2. Ken - Betwa
 3. Vaigai - Noyyal
 4. Kosi - Gandak

Question ID : **65497829134**
 Status : **Answered**
 Chosen Option : 4

Q.11 Which district of Odisha has the highest peak of the Eastern Ghats?

- Ans 1. Koraput
 2. Balangir
 3. Boudh
 4. Angul

Question ID : **65497829131**
 Status : **Not Answered**
 Chosen Option : --

Q.12 Which of the following statements about camels is INCORRECT?

- Ans 1. Their dung is dry.
 2. They excrete small amounts of urine.
 3. They live in terrestrial habitats.
 4. They sweat a lot.

Question ID : **65497829148**
 Status : **Answered**
 Chosen Option : 3

Q.13 Which of the following is paired CORRECTLY?

- Ans 1. Fixed/immovable joint: Elbow
 2. Ball and socket joint: Upper jaw-head
 3. Hinge joint: Shoulder
 4. Pivotal joint: Neck-head

Question ID : **65497829149**
 Status : **Answered**
 Chosen Option : 3

Q.14 Which of the following is a stringed musical instrument?

- Ans 1. Jantar
 2. Bungal/Bhungal
 3. Turi
 4. Zanz

Question ID : 65497829147
Status : Not Answered
Chosen Option : --

Q.15 In October 2020, the Government of India launched the SERB - POWER Scheme with the objective of promoting opportunities for:

- Ans 1. youth in medical research
 2. women in exploratory research
 3. women in biotechnology research
 4. youth in educational research

Question ID : 65497829129
Status : Answered
Chosen Option : 3

Q.16 In which prison did Mahatma Gandhi go on a hunger strike in protest of the British Government's decision to separate India's electoral system by caste, in the year 1932?

- Ans 1. Dongri
 2. Yerwada
 3. Byculla
 4. Bhoiwada

Question ID : 65497829132
Status : Answered
Chosen Option : 2

Q.17 The Preamble to the Constitution of India is based on the Objective Resolution moved by Jawaharlal Nehru in the Constituent Assembly on _____.

- Ans 1. 4 November 1946
 2. 13 December 1946
 3. 29 August 1947
 4. 14 February 1945

Question ID : 65497829128
Status : Not Answered
Chosen Option : --

Q.18 Which of the following was set up as the apex level institution for housing in India?

- Ans 1. Maharashtra Housing and Area Development Authority
 2. Delhi Development Authority
 3. The Housing Development Finance Corporation
 4. National Housing Bank

Question ID : 65497829138
Status : Answered
Chosen Option : 4

Q.19 Which of the following does NOT refer to movements in the oceans?

- Ans 1. Waves
 2. Currents
 3. Reflections
 4. Tides

Question ID : 65497829145
Status : Answered
Chosen Option : 3

Q.20 'The Other Side of Silence: Voices from the Partition of India' is a book by _____.

- Ans 1. Yasmin Khan
 2. Ayesha Jalal
 3. Bapsi Sidhwa
 4. Urvashi Butalia

Question ID : 65497829150
Status : Not Answered
Chosen Option : --

Q.21 Robert Clive, who was one of the founders of the establishment of British supremacy in India, came to India in the year:

- Ans 1. 1543
 2. 1733
 3. 1743
 4. 1643

Question ID : 65497829137
Status : Answered
Chosen Option : 3

Q.22 Who among the following was the first Indian woman to participate in the Olympic golf tournament?

- Ans 1. D ksha Dagar
 2. Aditi Ashok
 3. Sharmila Nicollet
 4. Smriti Mehra

Question ID : 65497829135
Status : Not Answered
Chosen Option : --

Q.23 Christian Coleman, who was banned for two years from 14 May 2020 for anti-doping violations, is associated with _____.

- Ans 1. boxing
 2. tennis
 3. swimming
 4. athletics

Question ID : 65497829146
Status : Not Answered
Chosen Option : --

Q.24 Under whose advice did Mahatma Gandhi decide to travel throughout India for a year, getting to know the land and its people since arriving in India from South Africa in 1915?

- Ans
- 1. Motilal Nehru
 - 2. Gopal Krishna Gokhale
 - 3. Bal Gangadhar Tilak
 - 4. Subhash Chandra Bose

Question ID : 65497829127
Status : Answered
Chosen Option : 2

Q.25 Since which year has Kabaddi been recognised as a full-fledged sport at the Asian Games?

- Ans
- 1. 2000
 - 2. 1994
 - 3. 1996
 - 4. 1990

Question ID : 65497829133
Status : Not Answered
Chosen Option : --

Section : Part C Elementary Mathematics

Q.1 If 20 men can complete a work in 36 days, then how many men can complete three-fourth of the same work in 18 days?

- Ans
- 1. 40
 - 2. 30
 - 3. 15
 - 4. 20

Question ID : 65497829155
Status : Answered
Chosen Option : 2

Q.2 A can complete a task in 15 hours and B can do it in 30 hours. After A had worked for 5 hours, B also joined A to finish the remaining task. In how much time will the remaining work be completed?

- Ans
- 1. 6 hours 40 minutes
 - 2. 5 hours 30 minutes
 - 3. 6 hours 20 minutes
 - 4. 5 hours 40 minutes

Question ID : 65497829166
Status : Answered
Chosen Option : 1

Q.3 If $x : y = 5 : 8$, then what is $(4x - 3y) : (4x - 7y)$?

- Ans
- 1. 1 : 9
 - 2. 1 : 1
 - 3. 11 : 19
 - 4. 9 : 1

Question ID : 65497829151
Status : Answered
Chosen Option : 1

Q.4 A retailer buys an article at a discount of 20% and sells it for ₹2,200, making a profit of 10%. What is the discount (in ₹)?

- Ans
- 1. ₹400
 - 2. ₹300
 - 3. ₹500
 - 4. ₹200

Question ID : 65497829156
Status : Answered
Chosen Option : 3

Q.5 At what rate percentage per annum (p.a.), will a sum of money double in $8\frac{1}{3}$ years simple interest?

- Ans
- 1. 8.5% p.a.
 - 2. 12% p.a.
 - 3. 7% p.a.
 - 4. 8% p.a.

Question ID : 65497829169
Status : Answered
Chosen Option : 2

Q.6 If the area of a rectangle with dimensions 18 m \times 50 m is the same as that of a square, then what is the length of the side of the square?

- Ans
- 1. 34 m
 - 2. 17.5 m
 - 3. 15 m
 - 4. 30 m

Question ID : 65497829152
Status : Answered
Chosen Option : 4

Q.7 The average of the resultant of three times of A and four times of B is 17. Also, the average of the resultant of four times of A and three times of B is 18. The sum of A and B is:

- Ans
- 1. 15
 - 2. 16
 - 3. 12
 - 4. 10

Question ID : 65497829163
Status : Answered
Chosen Option : 4

Q.8 A train takes 50 minutes to cover a certain distance at a speed of 90 km/h. If the speed is increased by $33\frac{1}{3}\%$, then how long will it take to cover $2\frac{4}{5}$ times of the distance?

- Ans**
- 1. 1 hour 30 minutes
 - 2. 1 hour 25 minutes
 - 3. 1 hour 20 minutes
 - 4. 1 hour 45 minutes

Question ID : 65497829167
Status : Answered
Chosen Option : 4

Q.9 The value of $8 - 4 \div 8 \text{ of } 3 + (7 \div 7 \text{ of } \frac{1}{7}) \div 6 + (3 \times 6 \div \frac{1}{3}) \times \frac{1}{6}$ is:

- Ans**
- 1. 0
 - 2. $18\frac{2}{3}$
 - 3. $12\frac{2}{3}$
 - 4. 18

Question ID : 65497829161
Status : Answered
Chosen Option : 4

Q.10 If the seven-digit number 57282p9 is completely divisible by 11, what is the value of $(11 - p)$, where $p > 0$?

- Ans**
- 1. 8
 - 2. 5
 - 3. 10
 - 4. 2

Question ID : 65497829159
Status : Answered
Chosen Option : 1

Q.11 If the difference between 70% of a number and 40% of the same number is 135, then the number is:

- Ans**
- 1. 420
 - 2. 350
 - 3. 550
 - 4. 450

Question ID : 65497829165
Status : Answered
Chosen Option : 4

Q.12 A sum of ₹26,000 is lent on simple interest in two parts such that the interest on the first part for 3 years at 5% per annum is equal to the interest on the second part for 4 years at 6% per annum. How much is the first part?

- Ans**
- 1. ₹14,860
 - 2. ₹10,000
 - 3. ₹11,835
 - 4. ₹16,000

Question ID : 65497829158
Status : Answered
Chosen Option : 4

Q.13 A's salary is 10% less than B's salary, B's salary is 25% less than C's salary. By how much percentage approximately, is C's salary more than A's salary?

- Ans**
- 1. 48%
 - 2. 33%
 - 3. 90%
 - 4. 65%

Question ID : 65497829160
Status : Answered
Chosen Option : 1

Q.14 The incomes of A and B are in the ratio 7 : 9 and the ratio of their expenditures is 13 : 15. If A and B save ₹9,000 and ₹15,000, respectively, then what is the income (in ₹) of A?

- Ans**
- 1. 28,000
 - 2. 31,500
 - 3. 35,000
 - 4. 38,500

Question ID : 65497829174
Status : Answered
Chosen Option : 3

Q.15 A piggy bank contains ₹1 coins, ₹2 coins and ₹5 coins in the ratio of 5 : 9 : 4. If the total amount in the piggy bank is ₹860, how many ₹5 coins are there?

- Ans**
- 1. 60
 - 2. 50
 - 3. 80
 - 4. 90

Question ID : 65497829168
Status : Answered
Chosen Option : 3

Q.16 A fruit seller purchased 30 kg apples at ₹520 per 10 kg. He sold 60% of them at the rate of ₹60/kg. To get a gain of 20%, the selling price of the remaining apples, per kg, is:

- Ans**
- ✓ 1. ₹66
 - ✗ 2. ₹62
 - ✗ 3. ₹65
 - ✗ 4. ₹60

Question ID : 65497829171
Status : Answered
Chosen Option : 1

Q.17 Two successive discounts of 12% and 10% are given on an item. If the marked price of the item is ₹3,500, then the selling price of the item is:

- Ans**
- ✗ 1. ₹2,650
 - ✗ 2. ₹2,652
 - ✓ 3. ₹2,772
 - ✗ 4. ₹2,770

Question ID : 65497829164
Status : Answered
Chosen Option : 3

Q.18 Walking at three-fifth of her usual speed, a girl reaches her workplace 1 hour 30 minutes late. What is her usual time of travel?

- Ans**
- ✗ 1. 56 min
 - ✗ 2. 54 min
 - ✓ 3. 2 h 15 min
 - ✗ 4. 2 h 45 min

Question ID : 65497829162
Status : Not Answered
Chosen Option : --

Q.19 Let x and y be the LCM and HCF of 165, 297 and 495, respectively. What is the value of $\frac{x}{y}$?

- Ans**
- ✗ 1. 75
 - ✗ 2. 55
 - ✓ 3. 45
 - ✗ 4. 15

Question ID : 65497829172
Status : Not Answered
Chosen Option : --

Q.20 Jagan bought 4 almirahs of equal cost. He sold 3 of these with a profit of 14%. He sold the 4th almirah at k% profit. What is the value of k, if the overall profit is 15%?

- Ans**
- 1. 16
 - 2. 14
 - 3. 15
 - 4. 18

Question ID : 65497829154
Status : Answered
Chosen Option : 4

Q.21 The average of 16 numbers is 24.5. If the average of the first 6 numbers is 20.5 and that of the last 5 numbers is 32.4, then what is the average of the remaining numbers?

- Ans**
- 1. 21.4
 - 2. 22.4
 - 3. 21.8
 - 4. 20.2

Question ID : 65497829173
Status : Answered
Chosen Option : 1

Q.22 If the length and the breadth of a rectangle are doubled, then its perimeter will become:

- Ans**
- 1. four times
 - 2. half
 - 3. thrice
 - 4. twice

Question ID : 65497829170
Status : Answered
Chosen Option : 4

Q.23 A certain sum amounts to ₹8,094 at 10.5% p.a. in 4 years, at simple interest. What will be the amount (in ₹) of the same sum at the same rate in $6\frac{2}{3}$ years, at simple interest?

- Ans**
- 1. 9,850
 - 2. 9,760
 - 3. 9,690
 - 4. 9,960

Question ID : 65497829175
Status : Answered
Chosen Option : 3

Q.24 Simplify the following expression.

$$\frac{1}{5} \div \frac{3}{4} \text{ of } \frac{2}{5} + \frac{1}{5} \times \frac{5}{6} - \frac{2}{3}$$

Ans

1. $-\frac{2}{5}$

2. $\frac{1}{6}$

3. $-\frac{59}{150}$

4. $-\frac{37}{90}$

Question ID : 65497829153

Status : Answered

Chosen Option : 2

Q.25 Due to some damage, Nitin sells a woollen jacket at 10% below the cost price. If he could sell it for ₹500 more, he would make a profit of 15%. What is the cost price of the jacket?

Ans

1. ₹3,333

2. ₹2,000

3. ₹2,500

4. ₹5,000

Question ID : 65497829157

Status : Answered

Chosen Option : 2

Section : Part D English

Q.1 The following sentence has been divided into parts. One of them may contain an error. Select the part that contains the error from the given options. If you don't find any error, mark 'No error' as your answer.

She didn't liked / any disturbance / during her studies.

Ans

1. No error

2. any disturbance

3. during her studies

4. She didn't I ked

Question ID : 65497829179

Status : Answered

Chosen Option : 4

Q.2 Select the most appropriate option to fill in the blank.

This is the _____ clock that I have ever seen.

Ans

1. purest

2. finest

3. sharpest

4. tastiest

Question ID : 65497829176

Status : Answered

Chosen Option : 2

Q.3 Select the most appropriate ANTONYM of the given word.

Awkward

- Ans 1. Graceful
 2. Bu ky
 3. Uneasy
 4. Inelegant

Question ID : 65497829187
Status : Answered
Chosen Option : 1

Q.4 Select the INCORRECTLY spelt word.

- Ans 1. Metal
 2. Taccal
 3. Brutal
 4. Fatal

Question ID : 65497829194
Status : Answered
Chosen Option : 2

Q.5 Select the option that can be used as a one-word substitute for the given group of words.

Giving orders in a manner that permits no refusal

- Ans 1. Infidelity
 2. Dictatorial
 3. Benedictory
 4. Adulterous

Question ID : 65497829185
Status : Answered
Chosen Option : 2

Q.6 Select the most appropriate option to fill in the blank.

Friendship increases happiness and _____ misery.

- Ans 1. delegates
 2. distinguishes
 3. diminishes
 4. determines

Question ID : 65497829195
Status : Answered
Chosen Option : 3

Q.7 Select the option that can be used as a one-word substitute for the given group of words.

Study of diseases

- Ans 1. Telepathy
 2. Pathology
 3. Antipathy
 4. Empathy

Question ID : 65497829184
Status : Answered
Chosen Option : 2

Q.8 Select the most appropriate meaning of the given idiom.

Eagle eye

- Ans 1. An eye full of curiosity
 2. An eye with sense of admiration
 3. An eye full of suspicion
 4. An eye with sharp visual powers

Question ID : 65497829181
Status : Answered
Chosen Option : 4

Q.9 Select the most appropriate option that can substitute the underlined segment in the given sentence. If there is no need to substitute it, select 'No substitution required'.

The book are not owned by him.

- Ans 1. are not being owned
 2. is not owned
 3. is not own
 4. No substitution required

Question ID : 65497829193
Status : Answered
Chosen Option : 2

Q.10 Select the most appropriate meaning of the given idiom.

To bear fruit

- Ans 1. To be creative
 2. To put in hard work
 3. To produce positive results
 4. To accept the truth

Question ID : 65497829178
Status : Answered
Chosen Option : 4

Q.11 Select the option that will improve the underlined part of the given sentence. In case no improvement is needed, select 'No improvement required'.

He was too tired for walking anymore.

- Ans
- 1. very tired for walking
 - 2. too tired to walk
 - 3. No improvement required
 - 4. to tired for walk

Question ID : 65497829188
 Status : Answered
 Chosen Option : 2

Q.12 Select the most appropriate option that can substitute the underlined segment in the given sentence. If there is no need to substitute it, select 'No substitution required'.

We watched the carpenter to repair our broken table.

- Ans
- 1. repairing
 - 2. No substitution required
 - 3. repaired
 - 4. to repairing

Question ID : 65497829177
 Status : Answered
 Chosen Option : 1

Q.13 Select the most appropriate ANTONYM of the given word.

Captivity

- Ans
- 1. Tumble
 - 2. Prosperity
 - 3. Elevate
 - 4. Freedom

Question ID : 65497829183
 Status : Answered
 Chosen Option : 4

Q.14 Select the most appropriate synonym of the given word.

Attract

- Ans
- 1. Prevent
 - 2. Entice
 - 3. Repel
 - 4. Disgust

Question ID : 65497829180
 Status : Answered
 Chosen Option : 2

Q.15 The following sentence has been split into four segments. Identify the segment that contains a grammatical error.

Even though Mahindra & Mahindra warn / consumers not to use low-standard engine oil, / people refuse to read the instructions / and damage their vehicles.

- Ans
- 1. people refuse to read the instructions
 - 2. Even though Mahindra & Mahindra warn
 - 3. and damage their vehicles
 - 4. consumers not to use low standard engine oil

Question ID : 65497829182
Status : Answered
Chosen Option : 2

Q.16 The following sentence has been split into four segments. Identify the segment that contains a grammatical error.

He is / the more intelligent / and hardworking student / of our class.

- Ans
- 1. the more intelligent
 - 2. of our class
 - 3. and hardworking student
 - 4. He is

Question ID : 65497829189
Status : Answered
Chosen Option : 1

Q.17 Select the option that can be used as a one-word substitute for the given group of words.

Disease that spreads by physical touch and contact

- Ans
- 1. Poisonous
 - 2. Contemptible
 - 3. Contagious
 - 4. Resistible

Question ID : 65497829191
Status : Answered
Chosen Option : 3

Q.18 Select the most appropriate synonym of the given word.

Deliberate

- Ans
- 1. Accidental
 - 2. Disastrous
 - 3. Unplanned
 - 4. Planned

Question ID : 65497829190
Status : Answered
Chosen Option : 4

Q.19 Select the most appropriate option to fill in the blank.

We have decided to go on a long _____ with our friends.

- Ans
- 1. visit
 - 2. travel
 - 3. drive
 - 4. passage

Question ID : 65497829192
Status : Answered
Chosen Option : 3

Q.20 Select the correctly spelt word.

- Ans
- 1. Mechanism
 - 2. Machanism
 - 3. Mechenism
 - 4. Mechanisum

Question ID : 65497829186
Status : Answered
Chosen Option : 1

Comprehension:

In the following passage, some words have been deleted. Read the passage carefully and select the most appropriate option to fill in each blank.

During a festival in Kerala, an elephant went on a rampage, attacking nearly 27 vehicles (1) _____ near a temple. Festivals in Kerala often (2) _____ hundreds of elephants to attract crowds and accidents are not uncommon.

The big animal (3) _____ tethered by the tusk along with four other elephants (4) _____ broke free and started flinging parked vehicles, (5) _____ rickshaws and motorbikes, around.

SubQuestion No : 21

Q.21 Select the most appropriate option to fill in blank no. 1.

- Ans
- 1. placed
 - 2. parked
 - 3. put
 - 4. planted

Question ID : 65497829197
Status : Answered
Chosen Option : 2

Comprehension:

In the following passage, some words have been deleted. Read the passage carefully and select the most appropriate option to fill in each blank.

During a festival in Kerala, an elephant went on a rampage, attacking nearly 27 vehicles (1) _____ near a temple. Festivals in Kerala often (2) _____ hundreds of elephants to attract crowds and accidents are not uncommon. The big animal (3) _____ tethered by the tusk along with four other elephants (4) _____ broke free and started flinging parked vehicles, (5) _____ rickshaws and motorbikes, around.

SubQuestion No : 22

Q.22 Select the most appropriate option to fill in blank no. 2.

- Ans 1. have
 2. has
 3. had
 4. are having

Question ID : 65497829198
 Status : Answered
 Chosen Option : 1

Comprehension:

In the following passage, some words have been deleted. Read the passage carefully and select the most appropriate option to fill in each blank.

During a festival in Kerala, an elephant went on a rampage, attacking nearly 27 vehicles (1) _____ near a temple. Festivals in Kerala often (2) _____ hundreds of elephants to attract crowds and accidents are not uncommon. The big animal (3) _____ tethered by the tusk along with four other elephants (4) _____ broke free and started flinging parked vehicles, (5) _____ rickshaws and motorbikes, around.

SubQuestion No : 23

Q.23 Select the most appropriate option to fill in blank no. 3.

- Ans 1. is
 2. are
 3. were
 4. was

Question ID : 65497829199
 Status : Answered
 Chosen Option : 1

Comprehension:

In the following passage, some words have been deleted. Read the passage carefully and select the most appropriate option to fill in each blank.

During a festival in Kerala, an elephant went on a rampage, attacking nearly 27 vehicles (1) _____ near a temple. Festivals in Kerala often (2) _____ hundreds of elephants to attract crowds and accidents are not uncommon. The big animal (3) _____ tethered by the tusk along with four other elephants (4) _____ broke free and started flinging parked vehicles, (5) _____ rickshaws and motorbikes, around.

SubQuestion No : 24

Q.24 Select the most appropriate option to fill in blank no. 4.

- Ans 1. although
 2. but
 3. hence
 4. so

Question ID : 65497829200
 Status : Answered
 Chosen Option : 2

Comprehension:

In the following passage, some words have been deleted. Read the passage carefully and select the most appropriate option to fill in each blank.

During a festival in Kerala, an elephant went on a rampage, attacking nearly 27 vehicles (1) _____ near a temple. Festivals in Kerala often (2) _____ hundreds of elephants to attract crowds and accidents are not uncommon. The big animal (3) _____ tethered by the tusk along with four other elephants (4) _____ broke free and started flinging parked vehicles, (5) _____ rickshaws and motorbikes, around.

SubQuestion No : 25

Q.25 Select the most appropriate option to fill in blank no. 5.

- Ans 1. included
 2. including
 3. include
 4. to include

Question ID : 65497829201
 Status : Answered
 Chosen Option : 2

Section : Part D Hindi

Q.1 दिये गये वाक्यांश के लिए एक सार्थक शब्द दीजिए।

जिसका दमन करना कठिन हो

- Ans 1. दुर्दम
 2. दुर्जय
 3. दुर्गम
 4. दुर्बोध

Question ID : 65497829209
 Status : Not Answered
 Chosen Option : --

Q.2 दिये गये वाक्यांश के लिए एक सार्थक शब्द का चयन कीजिए।

जिसे मर जाने की कामना हो

- Ans 1. मुमूर्षु
 2. मुमूर्षा
 3. मृत्यञ्जय
 4. मुमुक्षु

Question ID : 65497829205
 Status : Not Answered
 Chosen Option : --

Q.3 निम्नलिखित में से शुद्ध वर्तनी वाला शब्द कौन सा है?

- Ans 1. परिच्छण
 2. परीच्छण
 3. परिक्षण
 4. परीक्षण

Question ID : 65497829220
 Status : Not Answered
 Chosen Option : --

Q.4 दिए गए शब्द के समानार्थी शब्द का चयन करें।

आँख

- Ans 1. गगन
 2. लोचन
 3. दूरदर्शी
 4. सर्वदर्शी

Question ID : 65497829217
 Status : Not Answered
 Chosen Option : --

Q.5 दिए गए वाक्य का वह भाग ज्ञात करें जिसमें कोई त्रुटि है। यदि कोई त्रुटि नहीं है, तो 'कोई त्रुटि नहीं है' चुनें।

मुझे तो (1)/ कहा गया था कि (2)/ आप तैयार हैं। (3)/ कोई त्रुटि नहीं है (4)

- Ans 1. 4
 2. 2
 3. 3
 4. 1

Question ID : 65497829207
 Status : Not Answered
 Chosen Option : --

Q.6 दिए गए शब्द के समानार्थी शब्द का चयन कीजिए।

निपुण

- Ans 1. कुशलता
 2. अभिज्ञता
 3. पटुता
 4. अभिज्ञ

Question ID : 65497829208
 Status : Not Answered
 Chosen Option : --

Q.7 रिक्त स्थान भरने के लिए सबसे उपयुक्त शब्द का चयन करें।

बेटी पिताजी के साथ _____ थी।

- Ans 1. जानेवाले
 2. जानेवाली
 3. चलनेवाले
 4. जानेवाला

Question ID : 65497829213
 Status : Not Answered
 Chosen Option : --

Q.8 निम्नलिखित प्रश्न में, दिए गए चार विकल्पों में से उस विकल्प का चयन करें, जो मुहावरे का अर्थ व्यक्त करता है।

चारपाई पकड़ना

- Ans
- 1. उत्तेजित होना
 - 2. दुःख देना
 - 3. निश्चित हो जाना
 - 4. बीमार होना

Question ID : 65497829212

Status : Not Answered

Chosen Option : --

Q.9 'कृतज्ञ' शब्द का विलोम शब्द कौनसा है?

- Ans
- 1. विकृतज्ञ
 - 2. अकृतज्ञ
 - 3. अनकृतज्ञ
 - 4. अपकृतज्ञ

Question ID : 65497829204

Status : Not Answered

Chosen Option : --

Q.10 दिए गए वाक्य का वह भाग ज्ञात करें जिसमें कोई त्रुटि है। यदि कोई त्रुटि नहीं है, तो 'कोई त्रुटि नहीं है' चुनें।

कालिदास ने (1)/ अशोक पुष्प का (2)/ वर्णन शरतकाल में किया है। (3)/ कोई त्रुटि नहीं है (4)

- Ans
- 1. 4
 - 2. 1
 - 3. 2
 - 4. 3

Question ID : 65497829203

Status : Not Answered

Chosen Option : --

Q.11 निम्नलिखित में से शुद्ध वर्तनी वाला शब्द कौन सा है?

- Ans
- 1. आकाछा
 - 2. आकाक्षा
 - 3. अकाक्षा
 - 4. अकाछा

Question ID : 65497829219

Status : Not Answered

Chosen Option : --

Q.12 दिये गये वाक्य में रेखांकित अश को प्रतिस्थापित करने के लिए सबसे उपयुक्त विकल्प का चयन करें।

टकी की योग्यता सौ लीटर है।

- Ans 1. आयतन
 2. गहराई
 3. क्षमता
 4. प्रतिभा

Question ID : 65497829221

Status : Not Answered

Chosen Option : --

Q.13 दिए गए वाक्य का वह भाग ज्ञात करें जिसमें कोई त्रुटि है। यदि कोई त्रुटि नहीं है, तो 'कोई त्रुटि नहीं है' चुनें।

महात्मा गाँधी (1)/ भारत के राष्ट्रपिता (2)/ माना जाता है। (3)/ कोई त्रुटि नहीं है(4)

- Ans 1. 1
 2. 3
 3. 4
 4. 2

Question ID : 65497829216

Status : Not Answered

Chosen Option : --

Q.14 दिए गए वाक्य में रेखांकित खंड को प्रतिस्थापित करने के लिए सबसे उपयुक्त विकल्प का चयन करें। यदि इसे प्रतिस्थापित करने की आवश्यकता नहीं है, तो विकल्प 'किसी बदलाव की आवश्यकता नहीं है' का चयन करें।

मेरे सामने कौन ठहर सकता है?

- Ans 1. हमारे आगे
 2. किसी बदलाव की आवश्यकता नहीं है।
 3. मेरे आगे
 4. तुम्हारे आगे

Question ID : 65497829202

Status : Not Answered

Chosen Option : --

Q.15 रिक्त स्थान को भरने के लिए सबसे उपयुक्त शब्द का चयन करें।

दिल्ली _____ मलेरिया का जोर है।

- Ans 1. के अंदर
 2. के भीतर
 3. में
 4. के ऊपर

Question ID : 65497829215

Status : Not Answered

Chosen Option : --

Q.16 रिक्त स्थान को भरने के लिए सबसे उपयुक्त शब्द का चयन करें।

उनकी _____ मनाई गई।

- Ans
- 1. विवाह
 - 2. जयती
 - 3. जन्मदिन
 - 4. तिरोथान

Question ID : 65497829210
Status : Not Answered
Chosen Option : --

Q.17 नीचे दिए वाक्यांश के लिए एक शब्द दिए गए विकल्पों में से चुनिए-

जिस भूमि में कुछ उत्पन्न न होता हो

- Ans
- 1. उज्जड़
 - 2. वीरान
 - 3. ऊसर
 - 4. उपजाऊ

Question ID : 65497829218
Status : Not Answered
Chosen Option : --

Q.18 'मुँह में ठेंपी देना' इस मुहावरे का अर्थ कौनसा है?

- Ans
- 1. बोलने की हिम्मत न होना
 - 2. कुछ न बोलने देना
 - 3. खूब बदनाम करना
 - 4. दीनता प्रकट करना

Question ID : 65497829206
Status : Not Answered
Chosen Option : --

Q.19 दिए गए वाक्य में रेखांकित खंड को प्रतिस्थापित करने के लिए सबसे उपयुक्त विकल्प का चयन करें।
यदि इसे प्रतिस्थापित करने की आवश्यकता नहीं है, तो विकल्प 'किसी बदलाव की आवश्यकता नहीं है'
का चयन करें।

गाँधी जी ने अहिंसा के मार्ग का पालन कर अंग्रेजों को भारत से भगा दिये।

- Ans
- 1. किसी बदलाव की आवश्यकता नहीं है।
 - 2. पालन करते हुए अंग्रेजों को भारत से भगा दिये।
 - 3. पालन कर अंग्रेजों को भारत से भगा दिया।
 - 4. पालन करके अंग्रेजों को भारत से भगा दिये।

Question ID : 65497829214
Status : Not Answered
Chosen Option : --

Q.20 दिए गए शब्द का विलोम चुनें।

परकीय

- Ans 1. क्षत्रिय
 2. स्वकीय
 3. लाघव
 4. दृश्य

Question ID : 65497829211

Status : Not Answered

Chosen Option : --

Comprehension:

दिए गए अनुच्छेद में कुछ शब्द हटा दिए गए हैं। दिए गए विकल्पों की सहायता से रिक्त स्थान भरें। प्रत्येक प्रश्न सख्या के लिए सबसे उपयुक्त विकल्प का चयन कीजिए।

तुलसीदास को ईश्वर-प्रेम की झलक (1) _____ के रूप में मिली। उनके ग्रंथों विशेषतया रामचरितमानस के द्वारा उन्होंने वेद-शास्त्र-सम्मत (2) _____ का प्राचर किया। हमारी (3) _____ का आधार ही वेद, शास्त्र, स्मृति आदि ग्रंथ हैं। तुलसीदास ने उस संस्कृति के (4) _____ पक्ष की रक्षा की, और हमारे सामने कई आदर्श प्रस्तुत किए। उन्होंने श्रीरामचंद्र जैसे आदर्श चरित्र द्वारा हमारी पारिवारिक (5) _____ की स्थापना की। सत्य और पौरुष की प्रेरणा दी।

SubQuestion No : 21

Q.21 गद्यांश के रिक्त स्थान (1) के लिए सर्वाधिक उपयुक्त शब्द होगा-

- Ans 1. श्रीरामचंद्र
 2. भक्ति
 3. मानव सेवा
 4. ईश्वर सेवा

Question ID : 65497829223

Status : Not Answered

Chosen Option : --

Comprehension:

दिए गए अनुच्छेद में कुछ शब्द हटा दिए गए हैं। दिए गए विकल्पों की सहायता से रिक्त स्थान भरें। प्रत्येक प्रश्न सख्या के लिए सबसे उपयुक्त विकल्प का चयन कीजिए।

तुलसीदास को ईश्वर-प्रेम की झलक (1) _____ के रूप में मिली। उनके ग्रंथों विशेषतया रामचरितमानस के द्वारा उन्होंने वेद-शास्त्र-सम्मत (2) _____ का प्राचर किया। हमारी (3) _____ का आधार ही वेद, शास्त्र, स्मृति आदि ग्रंथ हैं। तुलसीदास ने उस संस्कृति के (4) _____ पक्ष की रक्षा की, और हमारे सामने कई आदर्श प्रस्तुत किए। उन्होंने श्रीरामचंद्र जैसे आदर्श चरित्र द्वारा हमारी पारिवारिक (5) _____ की स्थापना की। सत्य और पौरुष की प्रेरणा दी।

SubQuestion No : 22

Q.22 गद्यांश के रिक्त स्थान (2) के लिए सर्वाधिक उपयुक्त शब्द होगा-

- Ans 1. ख्रिस्ती धर्म
 2. पारसी धर्म
 3. हिन्दू धर्म
 4. बौध धर्म

Question ID : 65497829224

Status : Not Answered

Chosen Option : --

Comprehension:

दिए गए अनुच्छेद में कुछ शब्द हटा दिए गए हैं। दिए गए विकल्पों की सहायता से रिक्त स्थान भरें। प्रत्येक प्रश्न सख्या के लिए सबसे उपयुक्त विकल्प का चयन कीजिए।

तुलसीदास को ईश्वर-प्रेम की झलक (1) _____ के रूप में मिली। उनके ग्रंथों विशेषतया रामचरितमानस के द्वारा उन्होंने वेद-शास्त्र-सम्मत (2) _____ का प्राचर किया। हमारी (3) _____ का आधार ही वेद, शास्त्र, स्मृति आदि ग्रंथ हैं। तुलसीदास ने उस सस्कृति के (4) _____ पक्ष की रक्षा की, और हमारे सामने कई आदर्श प्रस्तुत किए। उन्होंने श्रीरामचंद्र जैसे आदर्श चरित्र द्वारा हमारी पारिवारिक (5) _____ की स्थापना की। सत्य और पौरुष की प्रेरणा दी।

SubQuestion No : 23

Q.23 गद्यांश के रिक्त स्थान (3) के लिए सर्वाधिक उपयुक्त शब्द होगा-

- Ans
- 1. रीति
 - 2. डर
 - 3. नीति
 - 4. सस्कृति

Question ID : 65497829225

Status : Not Answered

Chosen Option : --

Comprehension:

दिए गए अनुच्छेद में कुछ शब्द हटा दिए गए हैं। दिए गए विकल्पों की सहायता से रिक्त स्थान भरें। प्रत्येक प्रश्न सख्या के लिए सबसे उपयुक्त विकल्प का चयन कीजिए।

तुलसीदास को ईश्वर-प्रेम की झलक (1) _____ के रूप में मिली। उनके ग्रंथों विशेषतया रामचरितमानस के द्वारा उन्होंने वेद-शास्त्र-सम्मत (2) _____ का प्राचर किया। हमारी (3) _____ का आधार ही वेद, शास्त्र, स्मृति आदि ग्रंथ हैं। तुलसीदास ने उस सस्कृति के (4) _____ पक्ष की रक्षा की, और हमारे सामने कई आदर्श प्रस्तुत किए। उन्होंने श्रीरामचंद्र जैसे आदर्श चरित्र द्वारा हमारी पारिवारिक (5) _____ की स्थापना की। सत्य और पौरुष की प्रेरणा दी।

SubQuestion No : 24

Q.24 गद्यांश के रिक्त स्थान (4) के लिए सर्वाधिक उपयुक्त शब्द होगा-

- Ans
- 1. आध्यत्मिक और समाजिक
 - 2. राजनीतिक और शैक्षणिक
 - 3. भौतिक और राजनीतिक
 - 4. शैक्षणिक और आर्थिक

Question ID : 65497829226

Status : Not Answered

Chosen Option : --

Comprehension:

दिए गए अनुच्छेद में कुछ शब्द हटा दिए गए हैं। दिए गए विकल्पों की सहायता से रिक्त स्थान भरें। प्रत्येक प्रश्न सख्या के लिए सबसे उपयुक्त विकल्प का चयन कीजिए।

तुलसीदास को ईश्वर-प्रेम की झलक (1) _____ के रूप में मिली। उनके ग्रंथों विशेषतया रामचरितमानस के द्वारा उन्होंने वेद-शास्त्र-सम्मत (2) _____ का प्राचर किया। हमारी (3) _____ का आधार ही वेद, शास्त्र, स्मृति आदि ग्रंथ हैं। तुलसीदास ने उस सस्कृति के (4) _____ पक्ष की रक्षा की, और हमारे सामने कई आदर्श प्रस्तुत किए। उन्होंने श्रीरामचंद्र जैसे आदर्श चरित्र द्वारा हमारी पारिवारिक (5) _____ की स्थापना की। सत्य और पौरुष की प्रेरणा दी।

SubQuestion No : 25

Q.25 गद्यांश के रिक्त स्थान (5) के लिए सर्वाधिक उपयुक्त शब्द होगा-

- Ans
- 1. कलह
 - 2. उन्नति
 - 3. सुख-शांति
 - 4. विवाद

Question ID : 65497829227

Status : Not Answered

Chosen Option : --

Exam Date	26/11/2021
Exam Time :	12:30 PM - 2:00 PM
Subject	Constable GD 2021

Section : Part A General Intelligence and Reasoning

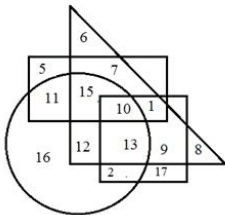
Q.1 Select the option that is related to the third term in the same way as the second term is related to the first term.

LARGE : NDTJG :: APPLES : ?

- Ans
- 1. CSROPU
 - 2. CSROGV
 - 3. CSORGV
 - 4. DSROGV

Question ID : 65497831392
 Status : Answered
 Chosen Option : 2

Q.2 In the following diagram, the circle represents 'Managers', the square represents 'Honest', the rectangle represents 'Females', and the triangle represents 'Rural'.



The number that represents rural honest managers who are NOT females is:

- Ans
- 1. 12
 - 2. 9
 - 3. 13
 - 4. 10

Question ID : 65497831398
 Status : Answered
 Chosen Option : 3

Q.3 In a certain code language, 'FLORA' is written as 'DORII'. How will 'MUSIC' be written in that language?

- Ans
- 1. FVFPR
 - 2. GQWQF
 - 3. FFVRP
 - 4. GFWQQ

Question ID : 65497831399
 Status : Answered
 Chosen Option : 3

Q.4 Rajan's family spends 60% of their monthly income on groceries, 12% of their monthly income on room rent, 8% of their monthly income on medical expenses, and the remaining amount of ₹18,000 is savings. What is Rajan's family's monthly income?

- Ans
- 1. ₹80,250
 - 2. ₹90,200
 - 3. ₹90,000
 - 4. ₹80,000

Question ID : 65497831402
 Status : Answered
 Chosen Option : 3

Q.5 Select the correct mirror image of the given combination when the mirror is placed at PQ as shown.



- Ans
- 1. TИAEMUƆOD
 - 2. TИEEMUƆOD
 - 3. DOCƆUMƆEИI
 - 4. DOCƆUMƆEИI

Question ID : 65497831411
 Status : Answered
 Chosen Option : 2

Q.6 Select the option in which the given figure is embedded (rotation is NOT allowed).



- Ans
- 1.
 - 2.
 - 3.
 - 4.

Question ID : 65497831391
 Status : Answered
 Chosen Option : 3

Q.7 Six friends, G, H, I, J, K and L, are sitting around a circular table, facing towards the centre of the table. H is sitting third to the left of G. L and I are not neighbours of H. K is sitting to the immediate right of I. Who is sitting to the immediate left of L?

- Ans
- 1. J
 - 2. H
 - 3. I
 - 4. G

Question ID : 65497831397

Status : Answered

Chosen Option : 1

Q.8 Select the correct option that indicates the arrangement of the given words in the order in which they appear in an English dictionary.

1. Censored
2. Cerebellum
3. Centripetal
4. Ceremonial
5. Centurion

- Ans
- 1. 1, 3, 5, 2, 4
 - 2. 3, 1, 2, 5, 4
 - 3. 3, 2, 1, 4, 5
 - 4. 1, 5, 3, 4, 2

Question ID : 65497831404

Status : Answered

Chosen Option : 1

Q.9 Atharv is married to Chetna, who is the only sister of Dilip. Chetna's paternal grandfather is Mukul. Neha is married to Mukul and they have two sons, Hardik and Bhavesh. Hardik is unmarried. Anjali is the daughter-in-law of Neha. Gyan is the son of Dilip and Ekta. How is Chetna related to Gyan?

- Ans
- 1. Wife
 - 2. Sister-in-law
 - 3. Aunt
 - 4. Daughter-in-law

Question ID : 65497831394

Status : Answered

Chosen Option : 3

Q.10 Eight friends, P, Q, R, S, T, U, V and W, are sitting clockwise around a circular table in the same sequence, facing the centre, at equal distances between them. If U is facing the north-east direction, then who is facing the south direction?

- Ans
- 1. T
 - 2. R
 - 3. S
 - 4. P

Question ID : 65497831387

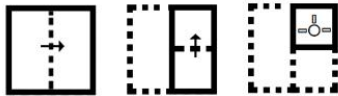
Status : Answered

Chosen Option : 4

Q.11 'Lucknow' is related to 'Gomti' in the same way as 'Varanasi' is related to '_____'.
 Ans 1. Yamuna
 2. Saryu
 3. Ganga
 4. Godavari

Question ID : 65497831396
 Status : Answered
 Chosen Option : 3

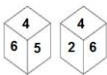
Q.12 The sequence of folding a piece of paper and the manner in which the folded paper has been cut is shown in the following figures. How would this paper look when unfolded?



- Ans
- 1.
 - 2.
 - 3.
 - 4.

Question ID : 65497831403
 Status : Answered
 Chosen Option : 2

Q.13 Two different positions of the same dice are shown, the six faces of which are numbered from 1 to 6. Select the number that will be on the face opposite to the face showing '2'.



- Ans
- 1. 5
 - 2. 3
 - 3. 4
 - 4. 1

Question ID : 65497831390
 Status : Answered
 Chosen Option : 1

Q.14 Select the letter-cluster from among the given options that can replace the question mark (?) in the following series.

STGMQ, SGQTM, SQMGT, ?

- Ans
- 1. STQMG
 - 2. SGTQM
 - 3. SMTQG
 - 4. SMQTG

Question ID : 65497831395
Status : Answered
Chosen Option : 1

Q.15 Select the combination of letters that when sequentially placed in the blanks of the given series will complete the series.

TK_TKT_P_K_KPTK_K_TK

- Ans
- 1. P, T, K, P, T, K
 - 2. P, K, T, T, T, P
 - 3. P, K, T, P, K, T
 - 4. P, T, T, K, P, T

Question ID : 65497831405
Status : Answered
Chosen Option : 2

Q.16 In a certain code language, 'POEM' is coded as '63'. How will 'FILE' be coded in that language?

- Ans
- 1. 78
 - 2. 82
 - 3. 80
 - 4. 76

Question ID : 65497831409
Status : Not Answered
Chosen Option : --

Q.17 Four letter-clusters have been given, out of which three are alike in some manner and one is different. Select the letter-cluster that is different.

- Ans
- 1. BQJM
 - 2. ATGN
 - 3. GSHH
 - 4. DEWK

Question ID : 65497831408
Status : Answered
Chosen Option : 4

Q.18 Which two numbers should be interchanged to make the given equation correct?

$$27 + 36 \div 9 \times 15 - 24 = 57$$

- Ans 1. 27 and 24
 2. 27 and 9
 3. 24 and 9
 4. 15 and 9

Question ID : 65497831389
Status : Answered
Chosen Option : 1

Q.19 Study the given pattern carefully and select the number that can replace the question mark (?) in it.

3 16 26
4 20 32
6 28 ?

- Ans 1. 38
 2. 46
 3. 44
 4. 48

Question ID : 65497831401
Status : Answered
Chosen Option : 3

Q.20 Select the number from among the given options that can replace the question mark (?) in the following series.

31, 32, 36, 63, 79, 204, ?

- Ans 1. 220
 2. 202
 3. 204
 4. 240

Question ID : 65497831406
Status : Answered
Chosen Option : 4

Q.21 Select the number from among the given options that can replace the question mark (?) in the following series.

10, 21, 35, 56, 90, 145, 231, 360, ?

- Ans 1. 546
 2. 463
 3. 564
 4. 436

Question ID : 65497831410
Status : Answered
Chosen Option : 1

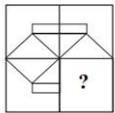
Q.22 Select the option that is related to the fourth number in the same way as the first number is related to the second number and the fifth number is related to the sixth number.

15 : 555 :: ? : 221 :: 17 : 719

- Ans
- 1. 23
 - 2. 11
 - 3. 19
 - 4. 5

Question ID : 65497831388
 Status : Answered
 Chosen Option : 2

Q.23 Select the figure from among the given options that can replace the question mark (?) and complete the pattern (rotation is NOT allowed).



- Ans
- 1.
 - 2.
 - 3.
 - 4.

Question ID : 65497831407
 Status : Answered
 Chosen Option : 1

Q.24 Read the given statements and conclusions carefully. Assuming that the information given in the statements is true, even if it appears to be at variance with commonly known facts, decide which of the given conclusions logically follow(s) from the statements.

Statements:
 Some cars are trains.
 Some trains are tractors.

Conclusions:
 I. No tractor is a car.
 II. No train is a car.
 III. Some tractors are cars.

- Ans
- 1. Both conclusions I and II follow
 - 2. All the conclusions follow
 - 3. Either conclusion I or III follows
 - 4. Both conclusions II and III follow

Question ID : 65497831400
 Status : Answered
 Chosen Option : 3

Q.25 In a certain code language, 'FLOWER' is written as 'KQTSAN'. How will 'WINDOW' be written in that language?

- Ans
- 1. CNSZLS
 - 2. BNSALS
 - 3. BNSZKS
 - 4. BMSAKS

Question ID : 65497831393
Status : Answered
Chosen Option : 3

Section : Part B General Knowledge and General Awareness

Q.1 In which of the following seasons are watermelon, muskmelon etc. produced in India?

- Ans
- 1. Kharif
 - 2. Zaid
 - 3. Rainy
 - 4. Rabi

Question ID : 65497831425
Status : Answered
Chosen Option : 2

Q.2 'Jagoi', an Indian classical dance form, is traditionally from the state of _____.

- Ans
- 1. Punjab
 - 2. Gujarat
 - 3. Karnataka
 - 4. Manipur

Question ID : 65497831412
Status : Not Answered
Chosen Option : --

Q.3 Every bill after being passed by the houses of parliament, either singly or in a joint sitting, is presented to the _____ for his assent.

- Ans
- 1. President
 - 2. Law Minister
 - 3. Chief Justice
 - 4. Prime Minister

Question ID : 65497831419
Status : Answered
Chosen Option : 1

Q.4 The first Economic Survey of India was presented in _____.

- Ans
- 1. 1965-66
 - 2. 1972-73
 - 3. 1948-49
 - 4. 1950-51

Question ID : 65497831436
Status : Answered
Chosen Option : 4

Q.5 Which of the following is an instrument of monetary policy of the Reserve Bank of India?

- Ans
- 1. Public debt
 - 2. Tax rate
 - 3. Government expenditure
 - 4. Repo rate

Question ID : 65497831416
Status : Answered
Chosen Option : 4

Q.6 Which of the following is NOT a sustainable method of waste management?

- Ans
- 1. Recycling
 - 2. Landfill
 - 3. Burning
 - 4. Incineration

Question ID : 65497831414
Status : Answered
Chosen Option : 3

Q.7 Who among the following was one of the Indian winners of the Great Immigrants of the Year 2020 award given by the US?

- Ans
- 1. Deepak Chopra
 - 2. N kki Haley
 - 3. Siddhartha Mukherjee
 - 4. Gita Gopinath

Question ID : 65497831415
Status : Answered
Chosen Option : 4

Q.8 Diego Maradona, the Argentine soccer player who passed away on 25 Nov 2020, is fondly remembered for one memorable goal known as:

- Ans
- 1. 'Golden hand' goal
 - 2. 'Silver lining' goal
 - 3. 'Hand of God' goal
 - 4. 'Hand of Maradona' goal

Question ID : 65497831435
Status : Answered
Chosen Option : 1

Q.9 With reference to the literature of the medieval Indian period, which of the following pairs is correct?

- Ans
- 1. Rajatarangini - Bilhana
 - 2. Prithviraj Raso - Nripatunga
 - 3. Vikramankadevacharita - Kalhana
 - 4. Gitagovinda - Jayadeva

Question ID : 65497831418
Status : Answered
Chosen Option : 3

Q.10 Who invented the electric bulb?

- Ans
- 1. Albert Einstein
 - 2. Isaac Newton
 - 3. Thomas Alva Edison
 - 4. Alexander Graham Bell

Question ID : 65497831434
Status : Answered
Chosen Option : 3

Q.11 Who among the following was the founder of Khudai Khidmatgar, a predominantly Pashtun nonviolent resistance movement known for its activism against the British Raj in colonial India?

- Ans
- 1. Lala Lajpat Rai
 - 2. Bal Gangadhar Tilak
 - 3. Khan Abdul Ghaffar Khan
 - 4. Subhash Chandra Bose

Question ID : 65497831417
Status : Not Answered
Chosen Option : --

Q.12 The Rajarajeshwara temple at Thanjavur is dedicated to:

- Ans
- 1. Lord Rama
 - 2. Lord Ganesha
 - 3. Lord Krishna
 - 4. Lord Shiva

Question ID : 65497831432
Status : Answered
Chosen Option : 1

Q.13 Which of the following statements about the Mughal Emperor Babur is INCORRECT?

- Ans
- 1. He was the first Mughal Emperor.
 - 2. He succeeded to the throne in 1494.
 - 3. He was 18 years old when he ascended the throne.
 - 4. He succeeded to the throne of Ferghana.

Question ID : 65497831430
Status : Answered
Chosen Option : 2

Q.14 In which of the following states is the Similipal National Park located?

- Ans
- 1. Odisha
 - 2. Tamil Nadu
 - 3. Bihar
 - 4. Maharashtra

Question ID : 65497831423
Status : Answered
Chosen Option : 1

Q.15 In November 2020, the Andaman and Nicobar Command (ANC) conducted a joint services exercise code-named _____ involving the three services components of Andaman and Nicobar Command.

- Ans
- 1. Blue Ribbon
 - 2. Bull Fight
 - 3. Blue Sea
 - 4. Bull Strike

Question ID : 65497831422
Status : Not Answered
Chosen Option : --

Q.16 The term 'Panchsheel' is associated with which of the following options?

- Ans
- 1. Fundamental Duties
 - 2. Composition of NITI Aayog
 - 3. Inter-State Relations
 - 4. Foreign Policy of India

Question ID : 65497831421
Status : Not Answered
Chosen Option : --

Q.17 Which Indian union territory has 'Dugong' as the state animal?

- Ans
- 1. Daman Diu
 - 2. Puducherry
 - 3. Ladakh
 - 4. Andaman Nicobar

Question ID : 65497831429
Status : Answered
Chosen Option : 4

Q.18 Who among the following declares the Minimum Support Price (MSP) for the crops?

- Ans
- 1. Ministry of Rural Development
 - 2. Ministry of Consumer Affairs, Food and Public distribution
 - 3. Ministry of Agriculture and Farmers Welfare
 - 4. Ministry of Food Processing Industries

Question ID : 65497831427
Status : Answered
Chosen Option : 3

Q.19 Lala Lajpat Rai, a nationalist from Punjab, was a member of the _____.

- Ans
- 1. Conservative group
 - 2. Moderate group
 - 3. Radical group
 - 4. Republican group

Question ID : 65497831428
Status : Answered
Chosen Option : 4

Q.20 As of October 2020, how many beaches of India have been awarded the 'Blue Flag Certification'?

- Ans
- 1. 7
 - 2. 8
 - 3. 9
 - 4. 6

Question ID : 65497831431
Status : Answered
Chosen Option : 2

Q.21 Rice needs _____ to grow.

- Ans
- 1. moderate temperature and rainfall
 - 2. high temperature, high humidity and rainfall
 - 3. moderate temperature and lots of sunshine
 - 4. high temperature and light rainfall

Question ID : 65497831433
Status : Answered
Chosen Option : 2

Q.22 Which of the following words has been named the '2020 Word of the Year' by Cambridge Dictionary?

- Ans
- 1. Pandemic
 - 2. Quarantine
 - 3. Lockdown
 - 4. Survive

Question ID : 65497831420
Status : Answered
Chosen Option : 2

Q.23 Which of the following is a characteristic of 'Pteridophytes'?

- Ans
- 1. They do not have a true vascular tissue containing lignin.
 - 2. Their lifecycles are dominated by the gametophyte stage.
 - 3. Their sporophytes are unbranched.
 - 4. They neither produce flowers or seeds.

Question ID : 65497831413
Status : Not Answered
Chosen Option : --

Q.24 Which of the following was NOT a venue in IPL 2020?

- Ans
- 1. Sharjah
 - 2. Muscat
 - 3. Dubai
 - 4. Abu Dhabi

Question ID : 65497831426
Status : Not Answered
Chosen Option : --

Q.25 In which of the following states did the Union Minister of Youth Affairs and Sports, Kiren Rijju virtually inaugurate the 11th Regional Centre of Sports Authority of India in November 2020?

- Ans
- 1. Odisha
 - 2. Assam
 - 3. Kerala
 - 4. Punjab

Question ID : 65497831424

Status : Answered

Chosen Option : 1

Section : Part C Elementary Mathematics

Q.1 A motor boat covers a distance of 24 km upstream in one hour more than the time taken to cover the same distance downstream. If the speed of the current of the river is 2 km/h, then what is the speed (in km/h) of the boat in upstream travel?

- Ans
- 1. 8
 - 2. 6
 - 3. 10
 - 4. 9

Question ID : 65497831450

Status : Not Answered

Chosen Option : --

Q.2 If the retail price of a table is ₹900 and the gain percentages of the manufacturer, the wholesale dealer and the retailer are 8%, 10% and 20%, respectively, then what is the cost of production of the table (rounded off to the integer value)?

- Ans
- 1. ₹869
 - 2. ₹631
 - 3. ₹546
 - 4. ₹750

Question ID : 65497831458

Status : Answered

Chosen Option : 2

Q.3 The value of $\frac{9 \div \{5 - 5 \div (6 - 7) \times 8 + 9\}}{4 + 4 \times 4 \div 4}$ is:

- Ans
- 1. $\frac{1}{10}$
 - 2. $\frac{1}{30}$
 - 3. $\frac{1}{15}$
 - 4. $\frac{1}{90}$

Question ID : 65497831443

Status : Answered

Chosen Option : 2

Q.4 Marked price of an item is ₹800. If a shopkeeper offers two discounts, one of 10% and another of 5% on the item, how much will be the selling price of the item?

- Ans**
- 1. ₹690
 - 2. ₹720
 - 3. ₹562
 - 4. ₹684

Question ID : 65497831457
Status : Answered
Chosen Option : 4

Q.5 The profit made by selling an article for ₹12,400 is equal to the loss incurred on selling the same article at ₹10,600. What will be the profit per cent if it is sold for ₹14,950?

- Ans**
- 1. 25
 - 2. 28
 - 3. 32
 - 4. 30

Question ID : 65497831451
Status : Answered
Chosen Option : 4

Q.6 The LCM and HCF of two numbers are 420 and 6, respectively. If sum of the numbers is 102, then what is the difference of the numbers?

- Ans**
- 1. 22
 - 2. 42
 - 3. 18
 - 4. 60

Question ID : 65497831437
Status : Answered
Chosen Option : 3

Q.7 The volume of a right circular cylinder is 8448 cm^3 and its curved surface area (in cm^2) is $\frac{1}{8}$ of the number representing its volume. What is the height (in cm) of the cylinder?

- Ans**
- 1. 8.4
 - 2. 9.1
 - 3. 11.2
 - 4. 10.5

Question ID : 65497831461
Status : Answered
Chosen Option : 4

Q.8 15 persons begin to work together on a job, but after some days 6 persons leave. As a result, the job which could have been completed in 42 days is completed in 54 days. After how many days of the commencement of the work did 6 persons leave?

- Ans**
- 1. 24
 - 2. 12
 - 3. 18
 - 4. 32

Question ID : 65497831449
 Status : Not Answered
 Chosen Option : --

Q.9 In a right-angled triangle, the right angle is contained between the sides with lengths 14 cm and 48 cm. If it is made to revolve around the longer side, what is the volume of the solid so formed? (Use $\pi = \frac{22}{7}$)

- Ans**
- 1. 29568 cm³
 - 2. 2112 cm³
 - 3. 33792 cm³
 - 4. 9856 cm³

Question ID : 65497831442
 Status : Not Answered
 Chosen Option : --

Q.10 The amount obtained by investing a sum of ₹15,000 at 8% p.a. in a certain time is ₹17,496, interest compounded annually. What will be the amount (in ₹) of the same sum at 15% p.a. for the same time, interest compounded 8-monthly?

- Ans**
- 1. 19,976
 - 2. 19,965
 - 3. 19,943
 - 4. 19,954

Question ID : 65497831460
 Status : Not Answered
 Chosen Option : --

Q.11 In a college election, the winning secretarial candidate got 69% of the votes and won 342 votes more than his rival. The total number of students in the college is:

- Ans**
- 1. 800
 - 2. 900
 - 3. 750
 - 4. 1000

Question ID : 65497831448
 Status : Answered
 Chosen Option : 2

Q.12 The average weight of a certain number of children in a group was 31 kg. If 11 children of average weight 32.5 kg joined the group, then the average weight of all the children would increase by 0.25 kg. The number of children initially in the group was:

- Ans**
- 1. 60
 - 2. 50
 - 3. 55
 - 4. 45

Question ID : 65497831446
 Status : Not Answered
 Chosen Option : --

Q.13 Find the value of $3 + \left(1 + \frac{1}{2} - \{3 - (8 \div 2)\} + \frac{1}{3} + \frac{2}{5}\right)$.

- Ans**
- 1. $\frac{187}{30}$
 - 2. $\frac{67}{30}$
 - 3. $\frac{37}{30}$
 - 4. $\frac{125}{30}$

Question ID : 65497831455
 Status : Answered
 Chosen Option : 1

Q.14 Pipe A is a filling pipe while B and C are emptying pipes. Pipe A alone can fill the tank in 10 hours and pipe B alone can empty two-third part of the tank in 20 hours. If all the three pipes are opened together, the tank is completely filled in 40 hours. In how many hours can C alone empty two-third part of the tank?

- Ans**
- 1. 24
 - 2. 12
 - 3. 16
 - 4. 20

Question ID : 65497831445
 Status : Answered
 Chosen Option : 3

Q.15 A person walking at a speed of 7.2 km/h and crosses a bridge in 25 minutes. Find the length of the bridge (in metres).

- Ans**
- 1. 1575
 - 2. 1960
 - 3. 3000
 - 4. 2000

Question ID : 65497831456
 Status : Answered
 Chosen Option : 3

Q.16 What is the greatest four-digit number which is exactly divisible by 24, 40 and 48?

- Ans
- 1. 9960
 - 2. 9990
 - 3. 9980
 - 4. 9840

Question ID : 65497831453
Status : Answered
Chosen Option : 4

Q.17 From a basket full of eggs, 20% of the eggs broke, 8% were rotten and 24% were kept aside for baking a cake. The remaining 12 eggs were consumed by some people. How many eggs were there in the basket initially?

- Ans
- 1. 25
 - 2. 52
 - 3. 20
 - 4. 48

Question ID : 65497831454
Status : Answered
Chosen Option : 1

Q.18 What is the third proportional to 18, 12?

- Ans
- 1. 7
 - 2. 8
 - 3. $6\sqrt{6}$
 - 4. 9

Question ID : 65497831441
Status : Answered
Chosen Option : 2

Q.19 Amarnath invested a sum of ₹22,500. At what rate of simple interest per annum will he obtain a total amount of ₹28,800 at the end of 4 years?

- Ans
- 1. 7%
 - 2. 6%
 - 3. 5%
 - 4. 4%

Question ID : 65497831440
Status : Answered
Chosen Option : 1

Q.20 A certain sum of money amounts to ₹12,144 at simple interest in 4 years and to ₹13,984 in $6\frac{1}{2}$ years. The rate of interest is:

- Ans
- 1. 9%
 - 2. 8%
 - 3. 10%
 - 4. 6%

Question ID : 65497831452
Status : Not Answered
Chosen Option : --

Q.21 A trader earns a profit of 30% by selling an article X and loses 16% by selling another article Y. If the ratio of the cost prices of X and Y is 3 : 4, then what is the gain/loss in the entire transaction (correct to one decimal place)?

- Ans**
- 1. Gain of 3.7%
 - 2. Gain of 4.8%
 - 3. Loss of 4.5%
 - 4. Loss of 3.9%

Question ID : 65497831444
Status : Answered
Chosen Option : 1

Q.22 152 is divided into three parts such that one-fifth of the first part, one-third of the second part and one-eleventh of the third part are equal. What is the sum of the second and the third part?

- Ans**
- 1. 112
 - 2. 128
 - 3. 120
 - 4. 64

Question ID : 65497831439
Status : Not Answered
Chosen Option : --

Q.23 The average of 48 numbers is 48. It was found later that observation 48 was wrongly taken as 84 at two places. What is the correct average?

- Ans**
- 1. 47.25
 - 2. 46.5
 - 3. 84
 - 4. 49.5

Question ID : 65497831438
Status : Answered
Chosen Option : 1

Q.24 The marked price of an item is ₹15,800. If a shopkeeper earns a profit of 18% after allowing a discount of 20%, then the cost price (in ₹) of the item (nearest to ₹1) is:

- Ans**
- 1. 12,640
 - 2. 15,415
 - 3. 13,756
 - 4. 10,712

Question ID : 65497831447
Status : Answered
Chosen Option : 4

Q.25 The incomes of A and B are in the ratio 5 : 7. The expenditure of A is equal to the savings of B. If the total expenditure of A and B is ₹15,750, then their total savings (in ₹) is:

- Ans 1. 11,250
 2. 11,180
 3. 11,200
 4. 11,280

Question ID : 65497831459
 Status : Not Answered
 Chosen Option : --

Section : Part D English

Q.1 Select the most appropriate ANTONYM of the given word.

Resource

- Ans 1. Property
 2. Reserve
 3. Lack
 4. Source

Question ID : 65497831477
 Status : Not Answered
 Chosen Option : --

Q.2 Select the most appropriate option that can substitute the underlined word in the given sentence.

She was the only companion Becky could confine in.

- Ans 1. confide
 2. console
 3. confer
 4. content

Question ID : 65497831466
 Status : Not Answered
 Chosen Option : --

Q.3 Select the most appropriate option that can substitute the underlined segment in the given sentence. If there is no need to substitute it, select 'No substitution required'.

You are ill if you eat all that food.

- Ans 1. have been
 2. will be
 3. were
 4. No substitution required

Question ID : 65497831462
 Status : Not Answered
 Chosen Option : --

Q.4 Select the option that can be used as a one-word substitute for the given group of words.

A recurrent urge to steal

- Ans 1. Kleptomania
 2. Pyromania
 3. Monomania
 4. Dipsomania

Question ID : 65497831478
Status : Not Answered
Chosen Option : --

Q.5 Select the most appropriate meaning of the given idiom.

To put something on hold

- Ans 1. To cancel something
 2. To procure something
 3. To postpone something
 4. To transfer something

Question ID : 65497831480
Status : Not Answered
Chosen Option : --

Q.6 Select the option that can be used as a one-word substitute for the given group of words.

A person who loves, supports and defends his country

- Ans 1. Dreamer
 2. Lover
 3. Fellow man
 4. Patriot

Question ID : 65497831474
Status : Not Answered
Chosen Option : --

Q.7 Select the option that can be used as a one-word substitute for the given group of words.

The sound a bear makes

- Ans 1. Caw
 2. Bray
 3. Growl
 4. Purr

Question ID : 65497831465
Status : Not Answered
Chosen Option : --

Q.8 The following sentence has been split into four segments. Identify the segment that contains a grammatical error.

Nobody were / allowed into / the containment zones / during the pandemic.

- Ans
- 1. during the pandemic
 - 2. allowed into
 - 3. the containment zones
 - 4. Nobody were

Question ID : 65497831468
Status : Not Answered
Chosen Option : --

Q.9 Select the most appropriate option that can substitute the underlined segment in the given sentence. If there is no need to substitute it, select 'No substitution required'.

Last Sunday I returning home late at night.

- Ans
- 1. No substitution required
 - 2. I returned home
 - 3. I am returning home
 - 4. I had been returning home

Question ID : 65497831472
Status : Not Answered
Chosen Option : --

Q.10 Select the most appropriate option to fill in the blank.

The type of turban worn by Indians _____ from one region to another.

- Ans
- 1. varies
 - 2. originates
 - 3. belongs
 - 4. follows

Question ID : 65497831470
Status : Not Answered
Chosen Option : --

Q.11 Select the most appropriate option to fill in the blank.

_____, he has only himself to blame.

- Ans
- 1. Immediately
 - 2. Accurately
 - 3. Ultimately
 - 4. Happily

Question ID : 65497831481
Status : Not Answered
Chosen Option : --

Q.12 Select the most appropriate synonym of the given word.

Restrain

- Ans 1. Provoke
 2. Control
 3. Force
 4. Encourage

Question ID : 65497831473
 Status : Not Answered
 Chosen Option : --

Q.13 Select the INCORRECTLY spelt word.

- Ans 1. Termite
 2. Terabyte
 3. Terrestrial
 4. Terminal

Question ID : 65497831479
 Status : Not Answered
 Chosen Option : --

Q.14 Select the INCORRECTLY spelt word.

- Ans 1. Picnic
 2. Picture
 3. Pickel
 4. Piano

Question ID : 65497831463
 Status : Not Answered
 Chosen Option : --

Q.15 Select the most appropriate ANTONYM of the given word.

Collect

- Ans 1. Hoard
 2. Compose
 3. Disperse
 4. Confine

Question ID : 65497831467
 Status : Not Answered
 Chosen Option : --

Q.16 Select the most appropriate synonym of the given word.

Vital

- Ans 1. Hungry
 2. Crucial
 3. Bold
 4. Ambitious

Question ID : 65497831469
 Status : Not Answered
 Chosen Option : --

Q.17 Parts of the given sentence have been given as options. One of them contains a grammatical error. Select the option that has the error.

A grand celebration in honour of a first woman gold medallist was organised by the family members.

- Ans 1. a first woman gold medallist
 2. by the family members
 3. in honour of
 4. grand celebration

Question ID : 65497831476
 Status : Not Answered
 Chosen Option : --

Q.18 Select the most appropriate meaning of the given idiom.

At the eleventh hour

- Ans 1. Too late in the night
 2. One hour before noon
 3. At the very last minute
 4. At 11:00 am

Question ID : 65497831475
 Status : Not Answered
 Chosen Option : --

Q.19 Parts of the given sentence have been given as options. One of them contains a grammatical error. Select the option that has the error.

Children are fond of eating food from Mala aunties small shop at the corner of the street.

- Ans 1. Mala aunties small shop
 2. are fond of
 3. food from
 4. at the corner

Question ID : 65497831471
 Status : Not Answered
 Chosen Option : --

Q.20 Select the most appropriate option to fill in the blank.

Though he earned meagre wages, he was _____ with his life.

- Ans 1. contented
 2. enthusiastic
 3. irritated
 4. miserable

Question ID : 65497831464
 Status : Not Answered
 Chosen Option : --

Comprehension:

In the following passage, some words have been deleted. Read the passage carefully and select the most appropriate option to fill in each blank.

Life processes are similar in all animals with (1)_____. So physiologists can find out a lot about the human body by studying animals (2)_____ frogs, rats and rabbits. Sometimes, research involves the death of these animals. But, physiologists take great care to not (3)_____ the animals. The animals are (4)_____ put to sleep during the experiments. It is only by physiological research (5)_____ medicine has been able to advance

SubQuestion No : 21

Q.21 Select the most appropriate option to fill in blank number 1.

- Ans 1. backbone
 2. the backbones
 3. the backbone
 4. backbones

Question ID : 65497831483
 Status : Not Answered
 Chosen Option : --

Comprehension:

In the following passage, some words have been deleted. Read the passage carefully and select the most appropriate option to fill in each blank.

Life processes are similar in all animals with (1)_____. So physiologists can find out a lot about the human body by studying animals (2)_____ frogs, rats and rabbits. Sometimes, research involves the death of these animals. But, physiologists take great care to not (3)_____ the animals. The animals are (4)_____ put to sleep during the experiments. It is only by physiological research (5)_____ medicine has been able to advance

SubQuestion No : 22

Q.22 Select the most appropriate option to fill in blank number 2.

- Ans 1. as I ke as
 2. as such
 3. such as
 4. as I ke

Question ID : 65497831484
 Status : Not Answered
 Chosen Option : --

Comprehension:

In the following passage, some words have been deleted. Read the passage carefully and select the most appropriate option to fill in each blank.

Life processes are similar in all animals with (1)_____. So physiologists can find out a lot about the human body by studying animals (2)_____ frogs, rats and rabbits. Sometimes, research involves the death of these animals. But, physiologists take great care to not (3)_____ the animals. The animals are (4)_____ put to sleep during the experiments. It is only by physiological research (5)_____ medicine has been able to advance

SubQuestion No : 23

Q.23 Select the most appropriate option to fill in blank number 3.

- Ans 1. hurt
 2. displease
 3. damage
 4. destroy

Question ID : 65497831485
 Status : Not Answered
 Chosen Option : --

Comprehension:

In the following passage, some words have been deleted. Read the passage carefully and select the most appropriate option to fill in each blank.

Life processes are similar in all animals with (1)_____. So physiologists can find out a lot about the human body by studying animals (2)_____ frogs, rats and rabbits. Sometimes, research involves the death of these animals. But, physiologists take great care to not (3)_____ the animals. The animals are (4)_____ put to sleep during the experiments. It is only by physiological research (5)_____ medicine has been able to advance

SubQuestion No : 24

Q.24 Select the most appropriate option to fill in blank number 4.

- Ans 1. oddly
 2. strangely
 3. usually
 4. incidentally

Question ID : 65497831486
 Status : Not Answered
 Chosen Option : --

Comprehension:

In the following passage, some words have been deleted. Read the passage carefully and select the most appropriate option to fill in each blank.

Life processes are similar in all animals with (1)_____. So physiologists can find out a lot about the human body by studying animals (2)_____ frogs, rats and rabbits. Sometimes, research involves the death of these animals. But, physiologists take great care to not (3)_____ the animals. The animals are (4)_____ put to sleep during the experiments. It is only by physiological research (5)_____ medicine has been able to advance

SubQuestion No : 25

Q.25 Select the most appropriate option to fill in blank number 5.

- Ans 1. that
 2. then
 3. than
 4. so

Question ID : 65497831487
 Status : Not Answered
 Chosen Option : --

Section : Part D Hindi

Q.1 सही वर्तनी वाले शब्द का चयन कीजिए।

- Ans 1. अत्यधिक
 2. अत्याधिक
 3. अत्याधिक
 4. अत्यधिक

Question ID : 65497831489
 Status : Answered
 Chosen Option : 1

Q.2 दिए गए वाक्य में रेखांकित खंड को प्रतिस्थापित करने के लिए सबसे उपयुक्त विकल्प का चयन करें।
यदि इसे प्रतिस्थापित करने की आवश्यकता नहीं है, तो विकल्प 'किसी बदलाव की आवश्यकता नहीं है'
का चयन करें।

शरीर पर कई अंग होते हैं।

- Ans 1. शरीर के
 2. शरीर के भीतर
 3. शरीर की
 4. किसी बदलाव की आवश्यकता नहीं है।

Question ID : 65497831499
 Status : Answered
 Chosen Option : 2

Q.3 'मत्स्य' का पर्यायवाची है-

- Ans 1. मुनि
 2. राजा
 3. मीन
 4. मेघ

Question ID : 65497831505
 Status : Answered
 Chosen Option : 3

Q.4 दिये गये वाक्यांश के लिए एक शब्द दीजिये।

जिस पर उपकार किया गया हो

- Ans 1. उत्पादित
 2. उद्धृत
 3. उपकृत
 4. उक्लण

Question ID : 65497831497
 Status : Answered
 Chosen Option : 3

Q.5 रिक्त स्थान की पूर्ति के लिए सबसे उपयुक्त शब्द का चयन कीजिए।

बिच्छू का _____ विषेला होता है।

- Ans 1. डक
 2. फन
 3. दश
 4. काटना

Question ID : 65497831490
 Status : Answered
 Chosen Option : 1

Q.6 नीचे दिए गए मुहावरे का अर्थ व्यक्त करने वाले विकल्प का चयन कीजिए।

हवाई किले बनाना

- Ans
- 1. हवा से किले बनाना
 - 2. हवाई जहाज से किले बनाना
 - 3. मात्र कल्पना करते रहना
 - 4. हवा में किले बनाना

Question ID : 65497831503
Status : Answered
Chosen Option : 3

Q.7 सही वर्तनी वाले शब्द का चयन कीजिए।

- Ans
- 1. औद्योगीकरण
 - 2. औद्योगिकरण
 - 3. ओद्योगीकरण
 - 4. औद्योगीकरन

Question ID : 65497831488
Status : Answered
Chosen Option : 1

Q.8 दिए गए वाक्य में रेखांकित खंड को प्रतिस्थापित करने के लिए सबसे उपयुक्त विकल्प का चयन करें। यदि इसे प्रतिस्थापित करने की आवश्यकता नहीं है, तो विकल्प 'किसी बदलाव की आवश्यकता नहीं है' का चयन करें।

प्रधानमंत्री 15 अगस्त के दिन लाल किले पर झंडा फहराते हैं।

- Ans
- 1. लाल किले पर झंडा फहराता हैं।
 - 2. लाल किले पर झंडा फहराते है।
 - 3. किसी बदलाव की आवश्यकता नहीं है।
 - 4. लाल किले पर झंडा फहरते हैं।

Question ID : 65497831494
Status : Answered
Chosen Option : 3

Q.9 दिए गए वाक्य का वह भाग ज्ञात करें जिसमें कोई त्रुटि है। यदि कोई त्रुटि नहीं है, तो 'कोई त्रुटि नहीं है' विकल्प को चुनें।

लगभग गोपाल जानता है कि उसका मित्र बीमार है।

- Ans
- 1. कि उसका मित्र
 - 2. लगभग गोपाल जानता है
 - 3. बीमार है
 - 4. कोई त्रुटि नहीं

Question ID : 65497831491
Status : Answered
Chosen Option : 2

Q.10 रिक्त स्थान की पूर्ति के लिए सबसे उपयुक्त विकल्प का चयन करें।

मुझे _____ है कि आप स्वस्थ हो गए हैं।

- Ans 1. हर्ष
 2. आनंद
 3. आह्लाद
 4. उल्लास

Question ID : 65497831507
 Status : Answered
 Chosen Option : 2

Q.11 नीचे दिए वाक्य में रिक्त-स्थान की पूर्ति के लिए सबसे उपयुक्त शब्द का चयन करें।

झीगुर _____ रहा है।

- Ans 1. झंकार
 2. चुकर
 3. कैक
 4. डकार

Question ID : 65497831501
 Status : Answered
 Chosen Option : 1

Q.12 दिए गए वाक्यांश के लिए एक शब्द चुनें।

जो कई भाषाएँ बोलता हो -

- Ans 1. बहुभाषी
 2. वाचाल
 3. अल्पभाषी
 4. मितभाषी

Question ID : 65497831500
 Status : Answered
 Chosen Option : 1

Q.13 दिए गए वाक्य का वह भाग ज्ञात करें जिसमें कोई त्रुटि है। यदि कोई त्रुटि नहीं है, तो 'कोई त्रुटि नहीं है' चुनें।

कृपया कार्यालय में सूचित कीजिए कि आपने अपनी स्वेच्छा से अवकाश लिया है।

- Ans 1. कृपया कार्यालय में सूचित कीजिए
 2. कि आपने अपनी स्वेच्छा से
 3. कोई त्रुटि नहीं है।
 4. अवकाश लिया है।

Question ID : 65497831495
 Status : Answered
 Chosen Option : 2

Q.14 दिए गए वाक्यांश के लिए एक शब्द दीजिए।

जो व्यक्ति किसी के उपकार को मानता हो

- Ans
- 1. कृतघ्न
 - 2. कृतज्ञ
 - 3. कृतकृत्य
 - 4. अकृतज्ञ

Question ID : 65497831493
Status : Answered
Chosen Option : 2

Q.15 'चूना लगाना' मुहावरे का सही अर्थ है-

- Ans
- 1. धोखा देना
 - 2. चोरी करना
 - 3. प्रसन्न करना
 - 4. पान खिलाना

Question ID : 65497831506
Status : Answered
Chosen Option : 1

Q.16 दिए गए वाक्य में रेखांकित खंड को प्रतिस्थापित करने के लिए सबसे उपयुक्त विकल्प का चयन करें।
यदि इसे प्रतिस्थापित करने की आवश्यकता नहीं है, तो विकल्प 'किसी बदलाव की आवश्यकता नहीं है'
का चयन करें।

उसकी परेशानी देखकर मेरा प्राण मुँह को आ गया।

- Ans
- 1. मेरे प्राण मुँह को आ गए।
 - 2. किसी बदलाव की आवश्यकता नहीं है।
 - 3. मेरे प्राण मुँह से आ गए।
 - 4. मेरे प्राण मुँह में आ गया।

Question ID : 65497831498
Status : Answered
Chosen Option : 1

Q.17 दिए गए शब्द का विलोम चुनें।

क्रोध

- Ans
- 1. हिंसा
 - 2. गुस्सा
 - 3. दया
 - 4. क्षमा

Question ID : 65497831492
Status : Answered
Chosen Option : 3

Q.18 दिए गए शब्द के समानार्थी शब्द का चयन करें।

व्योम

- Ans 1. अबक
 2. आकाश
 3. अशु
 4. अि

Question ID : 65497831496
 Status : Answered
 Chosen Option : 2

Q.19 दिए गए शब्द का विलोम चुनें-

जाति

- Ans 1. विजाति
 2. बिरादरी
 3. जाना-पहचाना
 4. बेजान

Question ID : 65497831502
 Status : Answered
 Chosen Option : 1

Q.20 दिये गये वाक्य के किस भाग में त्रुटि है?

प्रायः लोग देहिक सुख चाहते हैं।

- Ans 1. प्रायः लोग
 2. देहिक
 3. सुख
 4. चाहते हैं।

Question ID : 65497831504
 Status : Answered
 Chosen Option : 2

Comprehension:

दिए गए गद्यांश में से कुछ शब्द हटा दिए गए हैं। संबंधित प्रश्नों में प्रत्येक सख्या के लिए सबसे उपयुक्त विकल्प का चयन करें।

आधुनिक युग (1) _____ उपलब्धियों का युग है। जैसे-जैसे विज्ञान के (2) _____ बढ़ रहे हैं, वैसे-वैसे मानव की उन्नति और समृद्धि का मार्ग प्रशस्त हुआ है। आज का मानव धरती, आकाश और सुदूर (3) _____ के अनेक रहस्यों से अवगत हो चुका है। उसने (4) _____ के उद्भव और विकास से संबंधित नवीनतम व्याख्याएँ प्रस्तुत कर अपने बढ़ते कदमों को उचित (5) _____ प्रदान किया है।

SubQuestion No : 21

Q.21 गद्यांश के रिक्त स्थान (1) के लिए सर्वाधिक उपयुक्त शब्द होगा-

- Ans 1. साहित्यिक
 2. वैज्ञानिक
 3. ऐतिहासिक
 4. दार्शनिक

Question ID : 65497831509
 Status : Answered
 Chosen Option : 2

Comprehension:

दिए गए गद्यांश में से कुछ शब्द हटा दिए गए हैं। सबधित प्रश्नों में प्रत्येक सख्या के लिए सबसे उपयुक्त विकल्प का चयन करें।

आधुनिक युग (1) _____ उपलब्धियों का युग है। जैसे-जैसे विज्ञान के (2) _____ बढ़ रहे हैं, वैसे-वैसे मानव की उन्नति और समृद्धि का मार्ग प्रशस्त हुआ है। आज का मानव धरती, आकाश और सुदूर (3) _____ के अनेक रहस्यों से अवगत हो चुका है। उसने (4) _____ के उद्भव और विकास से सबधित नवीनतम व्याख्याएँ प्रस्तुत कर अपने बढ़ते कदमों को उचित (5) _____ प्रदान किया है।

SubQuestion No : 22

Q.22 गद्यांश के रिक्त स्थान (2) के लिए सर्वाधिक उपयुक्त शब्द होगा-

- Ans 1. कदम
 2. पहल
 3. माँग
 4. फैलाव

Question ID : 65497831510

Status : Answered

Chosen Option : 1

Comprehension:

दिए गए गद्यांश में से कुछ शब्द हटा दिए गए हैं। सबधित प्रश्नों में प्रत्येक सख्या के लिए सबसे उपयुक्त विकल्प का चयन करें।

आधुनिक युग (1) _____ उपलब्धियों का युग है। जैसे-जैसे विज्ञान के (2) _____ बढ़ रहे हैं, वैसे-वैसे मानव की उन्नति और समृद्धि का मार्ग प्रशस्त हुआ है। आज का मानव धरती, आकाश और सुदूर (3) _____ के अनेक रहस्यों से अवगत हो चुका है। उसने (4) _____ के उद्भव और विकास से सबधित नवीनतम व्याख्याएँ प्रस्तुत कर अपने बढ़ते कदमों को उचित (5) _____ प्रदान किया है।

SubQuestion No : 23

Q.23 गद्यांश के रिक्त स्थान (3) के लिए सर्वाधिक उपयुक्त शब्द होगा-

- Ans 1. उपकरण
 2. अतरिक्ष
 3. यातायात
 4. उद्यान

Question ID : 65497831511

Status : Answered

Chosen Option : 2

Comprehension:

दिए गए गद्यांश में से कुछ शब्द हटा दिए गए हैं। सबधित प्रश्नों में प्रत्येक सख्या के लिए सबसे उपयुक्त विकल्प का चयन करें।

आधुनिक युग (1) _____ उपलब्धियों का युग है। जैसे-जैसे विज्ञान के (2) _____ बढ़ रहे हैं, वैसे-वैसे मानव की उन्नति और समृद्धि का मार्ग प्रशस्त हुआ है। आज का मानव धरती, आकाश और सुदूर (3) _____ के अनेक रहस्यों से अवगत हो चुका है। उसने (4) _____ के उद्भव और विकास से सबधित नवीनतम व्याख्याएँ प्रस्तुत कर अपने बढ़ते कदमों को उचित (5) _____ प्रदान किया है।

SubQuestion No : 24

Q.24 गद्यांश के रिक्त स्थान (4) के लिए सर्वाधिक उपयुक्त शब्द होगा-

- Ans 1. ब्रह्मांड
 2. आश्रम
 3. आसमान
 4. देवालय

Question ID : 65497831512

Status : Answered

Chosen Option : 1

Comprehension:

दिए गए गद्यांश में से कुछ शब्द हटा दिए गए हैं। संबंधित प्रश्नों में प्रत्येक सख्या के लिए सबसे उपयुक्त विकल्प का चयन करें।

आधुनिक युग (1) _____ उपलब्धियों का युग है। जैसे-जैसे विज्ञान के (2) _____ बढ़ रहे हैं, वैसे-वैसे मानव की उन्नति और समृद्धि का मार्ग प्रशस्त हुआ है। आज का मानव धरती, आकाश और सुदूर (3) _____ के अनेक रहस्यों से अवगत हो चुका है। उसने (4) _____ के उद्भव और विकास से संबंधित नवीनतम व्याख्याएँ प्रस्तुत कर अपने बढ़ते कदमों को उचित (5) _____ प्रदान किया है।

SubQuestion No : 25

Q.25 गद्यांश के रिक्त स्थान (5) के लिए सर्वाधिक उपयुक्त शब्द होगा-

- Ans 1. स्वरूप
 2. अपरूप
 3. महत्व
 4. अधिकार

Question ID : 65497831513

Status : Answered

Chosen Option : 3

KD Job Updates

Exam Date	23/11/2021
Exam Time :	12:30 PM - 2:00 PM
Subject	Constable GD 2021

Section : Part A General Intelligence and Reasoning

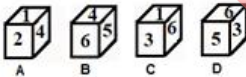
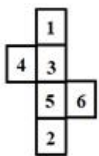
Q.1 Select the correct mirror image of the given combination when the mirror is placed at 'PQ' as shown.



- Ans
- 1. UAKNAI
 - 2. NAINKAU
 - 3. KAUINA
 - 4. NAINKAU

Question ID : 65497835335
 Status : Answered
 Chosen Option : 1

Q.2 Select the dice that can be formed by folding the given sheet along the lines.



- Ans
- 1. Only A and B
 - 2. Only C
 - 3. Only A and C
 - 4. Only A, B and D

Question ID : 65497835339
 Status : Marked For Review
 Chosen Option : 3

Q.3 Five players are sitting in a straight line in a park, facing north. A and B are sitting together. C is between B and D. E is second to the right of C. Find the position of B from the left.

- Ans 1. 2nd
 2. 1st
 3. 4th
 4. 5th

Question ID : 65497835336
Status : Answered
Chosen Option : 1

Q.4 Five friends, R, S, V, P and Q, are sitting in a row facing north. Q is sitting to the right of R and left of S. If V is the only one sitting to the left of R, then who is sitting in the left most position?

- Ans 1. R
 2. P
 3. S
 4. V

Question ID : 65497835326
Status : Answered
Chosen Option : 4

Q.5 Pointing to the photograph of a boy, Nikhil said, "He is my mother's mother-in-law's daughter's only brother's son". How is the boy in the photograph related to Nikhil?

- Ans 1. Cousin
 2. Father
 3. Paternal uncle
 4. Brother

Question ID : 65497835348
Status : Answered
Chosen Option : 4

Q.6 In a certain code language, JAGUAR is written as MDJXDU. How will LEOPARD be written as in that language?

- Ans 1. OHQSDVG
 2. OGRSEUG
 3. OHRTDUH
 4. OHRSDUG

Question ID : 65497835341
Status : Answered
Chosen Option : 4

Q.7 Select the correct option that indicates the arrangement of the given words in the order in which they appear in an English dictionary.

1. Gracious
2. Gorgeous
3. Government
4. Governor
5. Governess

- Ans
- 1. 2, 5, 1, 4, 3
 - 2. 2, 5, 1, 3, 4
 - 3. 2, 5, 3, 4, 1
 - 4. 3, 5, 1, 4, 2

Question ID : 65497835328
 Status : Answered
 Chosen Option : 3

Q.8 Select the option that is related to the third term in the same way as the second term is related to the first term.

SITAR : TKWEW :: CRAME : ?

- Ans
- 1. DTDSJ
 - 2. DSCQJ
 - 3. DTDQJ
 - 4. DTDQK

Question ID : 65497835346
 Status : Answered
 Chosen Option : 3

Q.9 If 'Z' denotes 'addition', 'X' denotes 'multiplication', 'Y' denotes 'division', and 'W' denotes 'subtraction', then what will be the value of the following expression?

15 Y (11 Z 4) Z 3 X 4 (19 Z 3) Y 11 X 3 (3 Z 2)

- Ans
- 1. 405
 - 2. 361
 - 3. 408
 - 4. 390

Question ID : 65497835338
 Status : Answered
 Chosen Option : 2

Q.10 In a certain code language, 'TOY' is written as 'UPZ' and 'COW' is written as 'DPX'. How will 'MONU' be written in that language?

- Ans
- 1. VONP
 - 2. VOPN
 - 3. NPVO
 - 4. NPOV

Question ID : 65497835333
 Status : Answered
 Chosen Option : 4

Q.11 Select the option that is related to the third number in the same way as the second number is related to the first number.

15 : 210 :: 26 : ?

- Ans
- 1. 666
 - 2. 656
 - 3. 650
 - 4. 676

Question ID : 65497835337

Status : Answered

Chosen Option : 3

Q.12 Read the given statements and conclusions carefully. Assuming that the information given in the statements is true, even if it appears to be at variance with commonly known facts, decide which of the given conclusions logically follow(s) from the statements.

Statements:

Some pumpkins are bananas.
All bananas are bitter gourds.

Conclusions:

I. No bitter gourd is a pumpkin.
II. Some bitter gourds are bananas.

- Ans
- 1. Both conclusions I and II follow
 - 2. Only conclusion II follows
 - 3. Only conclusion I follows
 - 4. Either conclusion I or II follows

Question ID : 65497835342

Status : Answered

Chosen Option : 2

Q.13 In a certain code language, DOUBLE is written as ZKQRYM, and TEN is written as XMV. How will TOLL be written in that language?

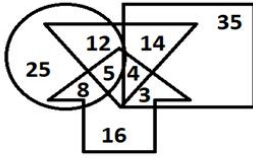
- Ans
- 1. UKQR
 - 2. XKYY
 - 3. YKXM
 - 4. MVYY

Question ID : 65497835347

Status : Marked For Review

Chosen Option : 2

Q.14 In the given Venn diagram, the circle represents 'girls who play football', the rectangle represents 'boys who play football', the triangle represents 'girls and boys who play hockey', and the arrow represents 'players who play badminton'.



What is the total number of girls and boys who play both football and hockey?

- Ans
- 1. 70
 - 2. 26
 - 3. 35
 - 4. 9

Question ID : 65497835327
 Status : Answered
 Chosen Option : 2

Q.15 Select the combination of letters that when sequentially placed in the blanks of the given series will complete the series.

L _ _ K C _ O Q _ C L O _ _ C

- Ans
- 1. OQLKQK
 - 2. QOLKQK
 - 3. OQLOQC
 - 4. OKOQCQ

Question ID : 65497835329
 Status : Answered
 Chosen Option : 1

Q.16 Select the option in which the numbers are related in the same way as are the numbers in the given set.

4, 17, 33

- Ans
- 1. 5, 10, 55
 - 2. 12, 15, 244
 - 3. 6, 15, 71
 - 4. 10, 14, 114

Question ID : 65497835343
 Status : Answered
 Chosen Option : 2

Q.17 Select the figure from among the given options that can replace the question mark (?) in the following series.



Ans

✗ 1.



✗ 2.



✗ 3.



✓ 4.



Question ID : 65497835331

Status : Answered

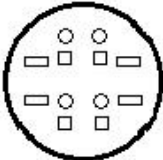
Chosen Option : 4

Q.18 The sequence of folding a piece of paper and the manner in which the folded paper has been cut is shown in the following figures. How would this paper look when unfolded?

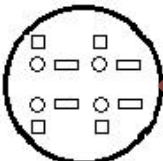


Ans

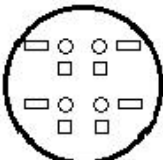
✗ 1.



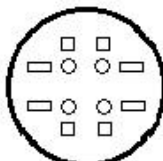
✗ 2.



✗ 3.



✓ 4.



Question ID : 65497835345

Status : Answered

Chosen Option : 4

Q.19 Select the option in which the given figure is embedded (rotation is NOT allowed).

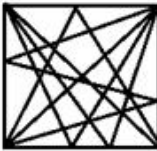


Ans

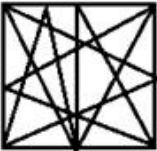
✓ 1.



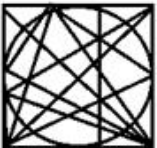
✗ 2.



✗ 3.



✗ 4.



Question ID : 65497835340

Status : Answered

Chosen Option : 1

Q.20 Select the number from among the given options that can replace the question mark (?) in the following series.

92, 86, 81, 77, ?, 72

Ans ✗ 1. 75

✗ 2. 76

✗ 3. 73

✓ 4. 74

Question ID : 65497835330

Status : Answered

Chosen Option : 4

Q.21 The sum of four numbers A, B, C and D is 147. The ratio of C and D is 3 : 5, respectively. D is five times A. C is twice B. What is the value of B?

Ans ✗ 1. 45

✗ 2. 27

✓ 3. 21

✗ 4. 42

Question ID : 65497835344

Status : Answered

Chosen Option : 3

Q.22 'Pen' is related to 'Ink' in the same way as 'Brush' is related to '_____'.
Ans 1. Pencil

2. Paint

3. Paper

4. Drawing Book

Question ID : 65497835325

Status : Answered

Chosen Option : 2

Q.23 Select the letter-cluster from among the given options that can replace the question mark (?) in the following series.

FIK, HKM, JMO, LOQ, ?

Ans 1. NRQ

2. NQS

3. QNS

4. SQN

Question ID : 65497835324

Status : Answered

Chosen Option : 2

Q.24 Select the number from among the given options that can replace the question mark (?) in the following series.

9, 18, 45, 126, ?

Ans 1. 369

2. 333

3. 393

4. 396

Question ID : 65497835334

Status : Answered

Chosen Option : 1

Q.25 Four letter-clusters have been given, out of which three are alike in some manner and one is different. Select the letter-cluster that is different.

Ans 1. HI

2. AB

3. CD

4. PG

Question ID : 65497835332

Status : Answered

Chosen Option : 4

Q.1 Who among the following is the first bowler to bowl two maiden overs in the Indian Premier league match?

- Ans 1. Mohammed Siraj
 2. Mohit Sharma
 3. Imran Tahir
 4. Sohail Tanvir

Question ID : **65497835366**
Status : **Marked For Review**
Chosen Option : **3**

Q.2 'Shaheedi Sabha' is a festival celebrated by which of the following states?

- Ans 1. Bihar
 2. Haryana
 3. Sikkim
 4. Punjab

Question ID : **65497835360**
Status : **Answered**
Chosen Option : **4**

Q.3 Which uninhabited island in India has a bird sanctuary?

- Ans 1. Bluff Island
 2. Barren Island
 3. Pitti Island
 4. Belle Island

Question ID : **65497835365**
Status : **Answered**
Chosen Option : **2**

Q.4 Who among the following kings of Benaras (Banaras) was arrested by Warren Hastings in 1781?

- Ans 1. Chait (Chet) Singh
 2. Mahip (Maheep) Narayan Singh
 3. Udit Narayan Singh
 4. Balwant Singh

Question ID : **65497835369**
Status : **Not Answered**
Chosen Option : **--**

Q.5 Achanta Sharath Kamal is a professional player of _____ from India.

- Ans 1. swimming
 2. golf
 3. table tennis
 4. lawn tennis

Question ID : **65497835350**
Status : **Answered**
Chosen Option : **2**

Q.6 What is the amount of annual health cover available to a family under the 'Ayushman Bharat' scheme of the Government of India?

- Ans 1. ₹ 5 lakh
 2. ₹ 10 lakh
 3. ₹ 1 lakh
 4. ₹ 3 lakh

Question ID : 65497835349
Status : Answered
Chosen Option : 2

Q.7 What is India's rank in the Global Economic Freedom Index 2020?

- Ans 1. 105
 2. 92
 3. 107
 4. 100

Question ID : 65497835367
Status : Answered
Chosen Option : 3

Q.8 Who among the following persons can be described as 'a spokesperson of the backward classes and castes in India'?

- Ans 1. Vallabhbhai Patel
 2. Dr. Babasaheb Ambedkar
 3. Dr. Rajendra Prasad
 4. Subhas Chandra Bose

Question ID : 65497835370
Status : Answered
Chosen Option : 2

Q.9 The theme for Shikshak Parv 2021 was '_____':

- Ans 1. Quality and Sustainable Schools: Learnings from the Schools in India
 2. Vidyarthi Devo Bhava
 3. National Education Policy
 4. Acharya Devo Bhava

Question ID : 65497835373
Status : Marked For Review
Chosen Option : 1

Q.10 Banabhatta wrote the biography of King _____.

- Ans 1. Harshavardhana
 2. Chandragupta Maurya
 3. Samudragupta
 4. Ashoka

Question ID : 65497835371
Status : Answered
Chosen Option : 1

Q.11 In which of the following years was the National Jute Policy formulated? Its objective was to increase productivity, improve quality, ensure good prices to jute farmers and enhance the yield per hectare.

- Ans
- 1. 2000
 - 2. 2005
 - 3. 1998
 - 4. 2014

Question ID : 65497835357
Status : Answered
Chosen Option : 2

Q.12 Calcitonin hormone is released by which of the following glands in humans when the amount of calcium in the bloodstream is high?

- Ans
- 1. Thyroid
 - 2. Adrenal
 - 3. Pituitary
 - 4. Pineal

Question ID : 65497835362
Status : Marked For Review
Chosen Option : 3

Q.13 For how many days is the Indian festival of Onam celebrated in Kerala?

- Ans
- 1. 12
 - 2. 10
 - 3. 15
 - 4. 7

Question ID : 65497835356
Status : Marked For Review
Chosen Option : 4

Q.14 Who among the following is the author of 'Grandparents' Bag of Stories'?

- Ans
- 1. Gauri Khan
 - 2. Twinkle Khanna
 - 3. Arundhati Roy
 - 4. Sudha Murty

Question ID : 65497835358
Status : Answered
Chosen Option : 2

Q.15 In which of the following years was the first Commonwealth Games held ?

- Ans
- 1. 1930
 - 2. 1912
 - 3. 1965
 - 4. 1956

Question ID : 65497835359
Status : Answered
Chosen Option : 3

Q.16 According to which of the following Articles of the Constitution of India does a citizen of the country have the right to protection of life and personal liberty?

- Ans
- 1. Article 17
 - 2. Article 21
 - 3. Article 20
 - 4. Article 26

Question ID : 65497835351
Status : Answered
Chosen Option : 2

Q.17 NABARD launched a sanitation literacy campaign to promote literacy on water, sanitation and hygiene under which of the following missions in Karnataka in October 2020?

- Ans
- 1. Jagananna Thodu
 - 2. Jal Shakti
 - 3. Hans Jal Dhara Yojana
 - 4. Swachh Bharat Mission

Question ID : 65497835361
Status : Marked For Review
Chosen Option : 2

Q.18 As per Economic Survey 2020–21, from the year _____, infant mortality rates declined by 12% for states that did not adopt the 'Ayushman Bharat Pradhan Mantri Jan Arogya Yojana' (AB-PMJAY).

- Ans
- 1. 2016–17 to 2020–21
 - 2. 2019–20 to 2020–21
 - 3. 2018–19 to 2019–20
 - 4. 2015–16 to 2019–20

Question ID : 65497835368
Status : Not Answered
Chosen Option : --

Q.19 In which of the following states did Prime Minister Narendra Modi unveil the Statue of Peace in November 2020?

- Ans
- 1. Maharashtra
 - 2. Rajasthan
 - 3. Tamil Nadu
 - 4. Gujarat

Question ID : 65497835355
Status : Marked For Review
Chosen Option : 4

Q.20 Article _____ of the Constitution of India states that the President can nominate two members of the Anglo-Indian community to the Lok Sabha if the community is not adequately represented.

- Ans
- 1. 335
 - 2. 331
 - 3. 333
 - 4. 337

Question ID : 65497835372
Status : Answered
Chosen Option : 2

Q.21 In which of the following years was the Gandhi-Irwin Pact signed?

- Ans 1. 1931
 2. 1921
 3. 1929
 4. 1919

Question ID : 65497835354
Status : Answered
Chosen Option : 1

Q.22 In November 2020, India signed an implementation agreement on hydrography with _____.

- Ans 1. China
 2. Indonesia
 3. Vietnam
 4. Japan

Question ID : 65497835352
Status : Answered
Chosen Option : 2

Q.23 Which of the following oceans' deepest point is Java Trench?

- Ans 1. Indian Ocean
 2. Pacific Ocean
 3. Atlantic Ocean
 4. Arctic Ocean

Question ID : 65497835364
Status : Answered
Chosen Option : 4

Q.24 Who among the following was appointed as the brand ambassador of Equitas Small Finance Bank in November 2020?

- Ans 1. Akshay Kumar
 2. Virat Kohli
 3. Smriti Mandhana
 4. Sushmita Sen

Question ID : 65497835363
Status : Answered
Chosen Option : 3

Q.25 Which of the following inert gases is used to inflate party balloons?

- Ans 1. Helium
 2. Xenon
 3. Argon
 4. Neon

Question ID : 65497835353
Status : Answered
Chosen Option : 1

Q.1 The average of some numbers is 37. If each of $\frac{3}{5}$ of the numbers is increased by 7, and each of the remaining is decreased by 9, then the average of the numbers, so obtained, is:

- Ans**
- 1. 35.8
 - 2. 38.5
 - 3. 37.6
 - 4. 36.7

Question ID : 65497835376
 Status : Answered
 Chosen Option : 3

Q.2 If a sum of ₹713 is divided into three parts, A, B and C in the ratio $\frac{1}{2} : \frac{2}{3} : \frac{3}{4}$, then C is equal to:

- Ans**
- 1. ₹209
 - 2. ₹297
 - 3. ₹270
 - 4. ₹279

Question ID : 65497835388
 Status : Answered
 Chosen Option : 4

Q.3 An article is listed at ₹18000 and the discount offered is 12%. What additional discount must be given to bring the net selling price to ₹14414.40?

- Ans**
- 1. 11%
 - 2. 8%
 - 3. 9%
 - 4. 10%

Question ID : 65497835377
 Status : Answered
 Chosen Option : 3

Q.4 A dealer marked the price of an item 40% above its cost price. He allowed two successive discounts of 25% and 16% to a particular customer. As a result, he incurred a loss of ₹590. At what price did he sell the item to the said customer?

- Ans**
- 1. ₹4,240
 - 2. ₹4,320
 - 3. ₹4,410
 - 4. ₹4,400

Question ID : 65497835383
 Status : Answered
 Chosen Option : 3

Q.5 A and B can do a piece of work in 36 days and 48 days, respectively. They work together for 12 days. The remaining work is completed by C alone in 10 days. A and C together can complete 62.5% of the original work in:

- Ans**
- 1. 9 days
 - 2. $12\frac{1}{2}$ days
 - 3. $14\frac{2}{5}$ days
 - 4. 10 days

Question ID : 65497835397
Status : Answered
Chosen Option : 1

Q.6 A sum of money at simple interest amounts to ₹750 in 5 years and to ₹800 in 6 years. The sum is:

- Ans**
- 1. ₹500
 - 2. ₹680
 - 3. ₹550
 - 4. ₹650

Question ID : 65497835387
Status : Answered
Chosen Option : 1

Q.7 Find the compound interest on ₹15,600 at 12% per annum for 9 months, compounded quarterly.

- Ans**
- 1. ₹ 1,446.54
 - 2. ₹ 1,972.40
 - 3. ₹ 1,925.75
 - 4. ₹ 1,969.25

Question ID : 65497835391
Status : Answered
Chosen Option : 3

Q.8 If $P : Q = 2 : 3$, then find $(2P + Q) : (5P - 3Q)$.

- Ans**
- 1. 4 : 3
 - 2. 2 : 5
 - 3. 7 : 1
 - 4. 3 : 8

Question ID : 65497835390
Status : Answered
Chosen Option : 3

Q.9 A certain sum amounts to ₹13860 after 5 years and to ₹16776 after 8 years at the same rate per cent per annum at simple interest. What will be simple interest (in ₹) on a sum of ₹20,000 for $3\frac{2}{5}$ years at the same rate?

- Ans**
- ✓ 1. 7344
 - ✗ 2. 7434
 - ✗ 3. 6374
 - ✗ 4. 6473

Question ID : 65497835375
Status : Answered
Chosen Option : 1

Q.10 If an integer 'k' is divisible by 3, 5 and 10, then what will be the next larger integer divisible by all these numbers?

- Ans**
- ✗ 1. $k + 2$
 - ✗ 2. $k + 20$
 - ✗ 3. $k + 10$
 - ✓ 4. $2k$

Question ID : 65497835384
Status : Answered
Chosen Option : 4

Q.11 Three articles are bought at ₹500 each. One of them is sold at a profit of 12%. If the other two articles are also sold and a loss of 20% occurs on the whole transaction, then what is the gain or loss percentage on selling the remaining two articles?

- Ans**
- ✗ 1. Profit of 15%
 - ✗ 2. Loss of 25%
 - ✗ 3. Loss of 40%
 - ✓ 4. Loss of 36%

Question ID : 65497835374
Status : Answered
Chosen Option : 4

Q.12 A shopkeeper bought an oven for ₹15,000 and sold it for ₹19,200. He paid ₹350 at the octroi and ₹650 transportation charges. What is his loss or gain per cent?

- Ans**
- ✓ 1. 20% gain
 - ✗ 2. 21% loss
 - ✗ 3. 20% loss
 - ✗ 4. 21% gain

Question ID : 65497835398
Status : Marked For Review
Chosen Option : 4

Q.13 A and B together have ₹4,655. If $\frac{4}{15}$ of A's amount is equal to $\frac{2}{5}$ of B's amount, what amount does B have?

- Ans**
- 1. ₹9,310
 - 2. ₹1,680
 - 3. ₹2,311
 - 4. ₹1,862

Question ID : 65497835386

Status : Answered

Chosen Option : 4

Q.14 Seema and Geeta start at the same time to ride from place A to place B, which is 90 km away from A. Seema travels 3 km per hour slower than Geeta. Geeta reaches place B and at once turns back, meeting Seema 15 km from place B. Geeta's speed (in km/h) is:

- Ans**
- 1. 12
 - 2. 10.5
 - 3. 7.5
 - 4. 9

Question ID : 65497835380

Status : Not Answered

Chosen Option : --

Q.15 The value of $78 \div 13$ of $5 - [48 \div 72 \times 3 - 15 \div 8 \times (23 - 29) - 17]$ of 4 is:

- Ans**
- 1. $5\frac{1}{4}$
 - 2. $4\frac{1}{5}$
 - 3. $15\frac{1}{4}$
 - 4. $16\frac{1}{5}$

Question ID : 65497835395

Status : Answered

Chosen Option : 4

Q.16 The value of $42\frac{1}{5} \div \left[36 + \frac{2}{3} \text{ of } 15 - \left(24 \div 8 + \frac{4}{5} \right) \right]$ is:

- Ans**
- 1. 1
 - 2. 10
 - 3. 15
 - 4. 5

Question ID : 65497835381

Status : Answered

Chosen Option : 1

Q.17 The average weight of A, B and C is 60 kg. If the average weight of A and B is 45 kg, then the weight of C is:

- Ans**
- 1. 80 kg
 - 2. 70 kg
 - 3. 60 kg
 - 4. 90 kg

Question ID : 65497835385
 Status : Answered
 Chosen Option : 4

Q.18 A can do a piece of work in 15 days working 6 hours per day and B can do it in 10 days working 5 hours per day. How long (in days) will they take to do it, working together for 9 hours per day?

- Ans**
- 1. $6\frac{4}{7}$
 - 2. $5\frac{4}{7}$
 - 3. $3\frac{4}{7}$
 - 4. $2\frac{4}{7}$

Question ID : 65497835379
 Status : Answered
 Chosen Option : 3

Q.19 A pool has length 15 m, breadth 10 m, and depth 3 m. The water is filled up to a depth of 2.5 m. What is the quantity (in kilo litres) of water in the pool?

- Ans**
- 1. 370.5
 - 2. 375
 - 3. 450
 - 4. 475

Question ID : 65497835389
 Status : Answered
 Chosen Option : 2

Q.20 The savings of Radha are equal to 40% of her expenditure. If her income increases by 25% and the expenditure increases by 40%, then her savings increase/decrease by how much?

- Ans**
- 1. Increase by 15%
 - 2. Increase by 12.5%
 - 3. Decrease by 15%
 - 4. Decrease by 12.5%

Question ID : 65497835394
 Status : Answered
 Chosen Option : 4

Q.21 The speed of a train is 80 km/h. The distance travelled by it from 10.20 a.m. to 1.50 p.m. is:

- Ans**
- 1. 250 km
 - 2. 260 km
 - 3. 280 km
 - 4. 240 km

Question ID : 65497835382
Status : Answered
Chosen Option : 3

Q.22 Find the area of a square, one of whose diagonals is 2.6 m long.

- Ans**
- 1. 1.25 m²
 - 2. 3.38 m²
 - 3. 2.42 m²
 - 4. 3.50 m²

Question ID : 65497835392
Status : Answered
Chosen Option : 2

Q.23 By selling an article for ₹299.20, a shopkeeper loses 12%. If he sells it for ₹350.20, then there is:

- Ans**
- 1. 1.5% gain
 - 2. 3% loss
 - 3. 1.5% loss
 - 4. 3% gain

Question ID : 65497835396
Status : Answered
Chosen Option : 4

Q.24 Sita scored 756 marks out of 900 and her brother Avi scored 350 marks out of 500. How many more marks should Avi get to make his score per cent equivalent to Sita?

- Ans**
- 1. 65
 - 2. 80
 - 3. 70
 - 4. 60

Question ID : 65497835378
Status : Answered
Chosen Option : 3

Q.25 Let x be the greatest number which when divides 6564, 7416 and 8907, the remainder in each case is the same. The sum of the digits of x is:

- Ans**
- 1. 9
 - 2. 5
 - 3. 10
 - 4. 6

Question ID : 65497835393
Status : Answered

Section : Part D English

Q.1 Select the option that will improve the underlined part of the given sentence. In case no improvement is needed, select 'No improvement required'.

He acted in according to my instructions.

- Ans 1. behalf of
 2. accordance with
 3. spite to
 4. No improvement required

Question ID : 65497835414
 Status : Answered
 Chosen Option : 2

Q.2 Select the most appropriate ANTONYM of the given word.

Sparse

- Ans 1. Clear
 2. Dense
 3. Extra
 4. Thin

Question ID : 65497835404
 Status : Answered
 Chosen Option : 1

Q.3 The following sentence has been split into four segments. Identify the segment that contains a grammatical error.

Banking today, / in a seamless world, / make it possible for you / to access your account from any city.

- Ans 1. make it possible for you
 2. to access your account from any city
 3. Banking today
 4. in a seamless world

Question ID : 65497835403
 Status : Answered
 Chosen Option : 1

Q.4 Select the option that can be used as a one-word substitute for the given group of words.

A medical practitioner specialising in children and their diseases

- Ans 1. Cardiologist
 2. Nephrologist
 3. Paediatrician
 4. Physician

Question ID : 65497835399
 Status : Marked For Review
 Chosen Option : 3

Q.5 Select the option that can be used as a one-word substitute for the given group of words.

A large group of people

- Ans 1. Herd
 2. Horde
 3. Flock
 4. Pride

Question ID : 65497835418
Status : Answered
Chosen Option : 2

Q.6 Select the most appropriate meaning of the given idiom.

Pass the baton

- Ans 1. pass on belongings to the heirs
 2. shift responsibility to others
 3. take part in a relay race
 4. share a reward with someone

Question ID : 65497835407
Status : Marked For Review
Chosen Option : 2

Q.7 Select the most appropriate SYNONYM of the given word.

Humble

- Ans 1. Loud
 2. Meek
 3. Mute
 4. Rude

Question ID : 65497835417
Status : Answered
Chosen Option : 3

Q.8 The following sentence has been split into four segments.

Identify the segment that contains a grammatical error. Tagore was / a poet / as well / a patriot.

- Ans 1. a patriot
 2. as well
 3. Tagore was
 4. a poet

Question ID : 65497835416
Status : Marked For Review
Chosen Option : 2

Q.9 Select the most appropriate option to fill in the blank.

In the jungle, he saw a _____ of wolves.

- Ans
- 1. bunch
 - 2. pack
 - 3. grove
 - 4. herd

Question ID : 65497835400

Status : Marked For Review

Chosen Option : 4

Q.10 Select the most appropriate option that can substitute the underlined word in the given sentence.

After graduation, he found a transaction job as a technical expert in regional office.

- Ans
- 1. rickety
 - 2. auspicious
 - 3. stable
 - 4. stalwart

Question ID : 65497835401

Status : Marked For Review

Chosen Option : 4

Q.11 The following sentence has been split into four segments. Identify the segment that contains a grammatical error.

The children / were warned / to keep away / for the edge of the cliff.

- Ans
- 1. The children
 - 2. were warned
 - 3. for the edge of the cliff
 - 4. to keep away

Question ID : 65497835410

Status : Answered

Chosen Option : 3

Q.12 Select the most appropriate option to fill in the blank.

The news reporter refused to _____ his source of information.

- Ans
- 1. disclose
 - 2. distribute
 - 3. discover
 - 4. distract

Question ID : 65497835409

Status : Answered

Chosen Option : 1

Q.13 Select the option that can be used as a one-word substitute for the given group of words.

Person who sells and arranges cut flowers

- Ans 1. Florist
 2. Horticulturist
 3. Decorator
 4. Gardener

Question ID : 65497835405
Status : Answered
Chosen Option : 1

Q.14 Select the most appropriate ANTONYM of the given word.

Deposit

- Ans 1. Withdraw
 2. Save
 3. Exhaust
 4. Submit

Question ID : 65497835402
Status : Answered
Chosen Option : 1

Q.15 Select the INCORRECTLY spelt word.

- Ans 1. Jelous
 2. Sincere
 3. Laughter
 4. Collide

Question ID : 65497835408
Status : Answered
Chosen Option : 1

Q.16 Select the most appropriate meaning of the given idiom.

Keep in touch

- Ans 1. Search closely
 2. Maintain contact
 3. Be sincere
 4. Trust someone

Question ID : 65497835413
Status : Answered
Chosen Option : 2

Q.17 Select the INCORRECTLY spelt word.

- Ans 1. Disobediaent
 2. Disapprove
 3. Proportionate
 4. Overreact

Question ID : 65497835406
Status : Answered
Chosen Option : 1

Q.18 Select the most appropriate synonym of the given word.

Spurn

- Ans 1. Despise
 2. Include
 3. Admire
 4. Gossip

Question ID : 65497835411
 Status : Answered
 Chosen Option : 1

Q.19 Select the most appropriate option to fill in the blank.

They were _____ of the consequences of their decision.

- Ans 1. aware
 2. alert
 3. alive
 4. awake

Question ID : 65497835415
 Status : Answered
 Chosen Option : 1

Q.20 Select the most appropriate option that can substitute the underlined segment in the given sentence. If there is no need to substitute it, select 'No substitution required'.

Trees clean an air and remove polluted gases.

- Ans 1. No substitution required
 2. clean the air
 3. clean a air
 4. clean an airs

Question ID : 65497835412
 Status : Answered
 Chosen Option : 2

Comprehension:

In the following passage, some words have been deleted. Read the passage carefully and select the most appropriate option to fill in each blank.

Once a severe epidemic broke out in Cuttack. Subhas Bose went there with a small (1)_____ to help the poor and sick people. Some people (2)_____ the work done by Subhas and his friends (3)_____ others made fun of them. Haider was one (4)_____ person who always ridiculed them. Once, when Haider fell ill, Subhas (5)_____ looked after him till he recovered.

SubQuestion No : 21

Q.21 Select the most appropriate option to fill in blank no. 1.

- Ans 1. club
 2. body
 3. team
 4. gang

Question ID : 65497835420
 Status : Answered
 Chosen Option : 3

Comprehension:

In the following passage, some words have been deleted. Read the passage carefully and select the most appropriate option to fill in each blank.

Once a severe epidemic broke out in Cuttack. Subhas Bose went there with a small (1)_____ to help the poor and sick people. Some people (2)_____ the work done by Subhas and his friends (3)_____ others made fun of them. Haider was one (4)_____ person who always ridiculed them. Once, when Haider fell ill, Subhas (5)_____ looked after him till he recovered.

SubQuestion No : 22

Q.22 Select the most appropriate option to fill in blank no. 2.

- Ans 1. obliged
 2. enjoyed
 3. thanked
 4. praised

Question ID : 65497835421

Status : Answered

Chosen Option : 4

Comprehension:

In the following passage, some words have been deleted. Read the passage carefully and select the most appropriate option to fill in each blank.

Once a severe epidemic broke out in Cuttack. Subhas Bose went there with a small (1)_____ to help the poor and sick people. Some people (2)_____ the work done by Subhas and his friends (3)_____ others made fun of them. Haider was one (4)_____ person who always ridiculed them. Once, when Haider fell ill, Subhas (5)_____ looked after him till he recovered.

SubQuestion No : 23

Q.23 Select the most appropriate option to fill in blank no. 3.

- Ans 1. while
 2. as long as
 3. since
 4. unless

Question ID : 65497835422

Status : Answered

Chosen Option : 1

Comprehension:

In the following passage, some words have been deleted. Read the passage carefully and select the most appropriate option to fill in each blank.

Once a severe epidemic broke out in Cuttack. Subhas Bose went there with a small (1)_____ to help the poor and sick people. Some people (2)_____ the work done by Subhas and his friends (3)_____ others made fun of them. Haider was one (4)_____ person who always ridiculed them. Once, when Haider fell ill, Subhas (5)_____ looked after him till he recovered.

SubQuestion No : 24

Q.24 Select the most appropriate option to fill in blank no. 4.

- Ans 1. such
 2. so
 3. which
 4. that

Question ID : 65497835423

Status : Answered

Chosen Option : 1

Comprehension:

In the following passage, some words have been deleted. Read the passage carefully and select the most appropriate option to fill in each blank.

Once a severe epidemic broke out in Cuttack. Subhas Bose went there with a small (1)_____ to help the poor and sick people. Some people (2)_____ the work done by Subhas and his friends (3)_____ others made fun of them. Haider was one (4)_____ person who always ridiculed them. Once, when Haider fell ill, Subhas (5)_____ looked after him till he recovered.

SubQuestion No : 25

Q.25 Select the most appropriate option to fill in blank no. 5.

- Ans 1. smoothly
 2. gently
 3. freely
 4. politely

Question ID : 65497835424
 Status : Answered
 Chosen Option : 4

Section : Part D Hindi

Q.1 दिए गए वाक्य के किस भाग में त्रुटि है?

इसमें समस्त प्राणिमात्र का कल्याण निहित है।

- Ans 1. इसमें
 2. निहित है।
 3. समस्त प्राणिमात्र
 4. का कल्याण

Question ID : 65497835440
 Status : Not Answered
 Chosen Option : --

Q.2 रिक्त स्थान की पूर्ति के लिए सर्वाधिक उपयुक्त शब्द का चयन कीजिए:

सैनिक आतकवादी के पैरो में _____ डालकर ले गए।

- Ans 1. पाज़ेब
 2. घुघरू
 3. हथकड़िया
 4. बेड़िया

Question ID : 65497835437
 Status : Not Answered
 Chosen Option : --

Q.3 रिक्त स्थान की पूर्ति करने के लिए सर्वाधिक उपयुक्त विकल्प का चयन करें।

अर्जुन के सामने एक ही _____ था - मछली की आख।

- Ans 1. उद्देश्य
 2. लक्ष्य
 3. ध्येय
 4. मन्तव्य

Question ID : 65497835439
 Status : Not Answered
 Chosen Option : --

Q.4 निम्नलिखित प्रश्न में, दिए गए चार विकल्पों में से, उस विकल्प का चयन करें, जो मुहावरे के सही अर्थ को व्यक्त करता है।

भेड़ बना लेना

- Ans
- 1. घोर विपत्ति आना
 - 2. मन में जगह बना लेना
 - 3. दीवार में चुनना
 - 4. वश में कर लेना

Question ID : 65497835432

Status : Not Answered

Chosen Option : --

Q.5 दिए गए वाक्यांश के लिए एक शब्द दीजिए।

जिसकी आशा की गई हो

- Ans
- 1. आशानुसार
 - 2. आशातीत
 - 3. प्रत्याशित
 - 4. अप्रत्याशित

Question ID : 65497835435

Status : Not Answered

Chosen Option : --

Q.6 दिए गए वाक्य का वह भाग ज्ञात करें जिसमें कोई त्रुटि है। यदि कोई त्रुटि नहीं है, तो 'कोई त्रुटि नहीं है' विकल्प को चुनें।

(1) उसने (2) कपड़े सीने में (3) दक्ष है (4) कोई त्रुटि नहीं है।

- Ans
- 1. उसने
 - 2. कोई त्रुटि नहीं है।
 - 3. दक्ष है
 - 4. कपड़े सीने में

Question ID : 65497835426

Status : Not Answered

Chosen Option : --

Q.7 'रश्मि' किसका पर्यायवाची है?

- Ans
- 1. नौका
 - 2. बिजली
 - 3. किरण
 - 4. स्त्री

Question ID : 65497835444

Status : Not Answered

Chosen Option : --

Q.8 दिए गए शब्द के समानार्थी शब्द का चयन करें।

पक्षी

- Ans 1. विपिन
 2. पखेरू
 3. कुक्कू
 4. फलक

Question ID : 65497835427
 Status : Not Answered
 Chosen Option : --

Q.9 दिए गए वाक्यांश के लिए एक शब्द दीजिए।

कम बोलने वाला

- Ans 1. मितभाषी
 2. गभीर
 3. वाचाल
 4. मृदुभाषी

Question ID : 65497835436
 Status : Not Answered
 Chosen Option : --

Q.10 दिए गए वाक्य के किस भाग में त्रुटि है?

मुझे इस आदमी का पता मालुम नहीं है।

- Ans 1. इस आदमी
 2. मालुम नहीं है।
 3. का पता
 4. मुझे

Question ID : 65497835443
 Status : Not Answered
 Chosen Option : --

Q.11 सही वर्तनी वाले शब्द का चयन करें।

- Ans 1. स्वादिश्ट
 2. स्वादिष्ट
 3. स्वादुष्ट
 4. सवादिष्ठ

Question ID : 65497835433
 Status : Not Answered
 Chosen Option : --

Q.12 'सूर्योदय के पहले का समय' वाक्यांश के लिए एक शब्द क्या होगा?

- Ans 1. प्रातःकाल
 2. पूर्वाह्न
 3. उषाकाल
 4. अपराह्न

Question ID : 65497835442
 Status : Not Answered
 Chosen Option : --

Q.13 'सामान्य' का विलोम शब्द क्या होगा?

- Ans 1. विशिष्ट
 2. अभद्र
 3. अवशिष्ट
 4. वशिष्ट

Question ID : 65497835441
 Status : Not Answered
 Chosen Option : --

Q.14 दिए गए वाक्य में रेखांकित खंड को प्रतिस्थापित करने के लिए सर्वाधिक उपयुक्त विकल्प का चयन करें। यदि इसे प्रतिस्थापित करने की आवश्यकता नहीं है, तो विकल्प 'किसी बदलाव की आवश्यकता नहीं है' का चयन करें।

मेज पर रखी हुई पुस्तक उसका नहीं है।

- Ans 1. उसके नहीं है
 2. किसीका नहीं है
 3. किसी बदलाव की आवश्यकता नहीं है।
 4. उसकी नहीं है

Question ID : 65497835428
 Status : Not Answered
 Chosen Option : --

Q.15 सही वर्तनी वाले शब्द का चयन करें।

- Ans 1. कवयित्री
 2. कवयित्री
 3. कवयत्री
 4. कवयीत्री

Question ID : 65497835434
 Status : Not Answered
 Chosen Option : --

Q.16 दिए गए वाक्य में रेखांकित खंड को प्रतिस्थापित करने के लिए सर्वाधिक उपयुक्त विकल्प का चयन करें। यदि इसे प्रतिस्थापित करने की आवश्यकता नहीं है, तो विकल्प 'किसी बदलाव की आवश्यकता नहीं है' का चयन करें।

रवींद्रनाथ जी ने भारत के एक प्रसिद्ध कवि थे।

- Ans 1. किसी बदलाव की आवश्यकता नहीं है।
 2. रवींद्रनाथ जी को
 3. रवींद्रनाथ जी से
 4. रवींद्रनाथ जी

Question ID : 65497835429
 Status : Not Answered
 Chosen Option : --

Q.17 निम्न चार विकल्पों में से, उस विकल्प का चयन करें, जो दिए गए मुहावरे के सही अर्थ को व्यक्त करता है-

गागर में सागर भरना

- Ans 1. थोड़े में बहुत कुछ कहना
 2. थोड़े पैसों से बहुत कुछ खरीद लेना
 3. थोड़ी जगह में बहुत सामान जमाना
 4. छोटे बर्तन में ज्यादा चीज़ रखना

Question ID : 65497835431
 Status : Not Answered
 Chosen Option : --

Q.18 दिए गए विकल्पों में से निम्नलिखित शब्द के विलोम शब्द का चयन कीजिए:

जटिल

- Ans 1. सरल
 2. सयुक्त
 3. पेचीदा
 4. कठिन

Question ID : 65497835430
 Status : Not Answered
 Chosen Option : --

Q.19 दिए गए वाक्य में रेखांकित अश को प्रतिस्थापित करने के लिए सर्वाधिक उपयुक्त विकल्प का चयन करें।

गोलियों की बाढ़ के सामने कोई न टिक सका।

- Ans 1. चोट
 2. मार
 3. आहट
 4. बौछार

Question ID : 65497835438
 Status : Not Answered
 Chosen Option : --

Q.20 रिक्त स्थान की पूर्ति करने के लिए सर्वाधिक उपयुक्त शब्द का चयन कीजिए।

उसके पैर में _____ लग गई।

- Ans 1. टक्कर
 2. धुन
 3. काटा
 4. ठोकर

Question ID : 65497835425
 Status : Not Answered
 Chosen Option : --

Comprehension:

अब मनुष्य का सारा (1)_____ शक्ति – सचय, सफलता और जीत पर चला गया है, आज वह जब अपने (2)_____ की ओर चलता है, तब उसे यह देखने की जरूरत (3)_____ नहीं होती कि उसके जूतों के नाल किसकी छाती को (4)_____ रहे हैं। जब तक मनुष्य के भीतर (5)_____ का जोर था, वह अपने को सुखी और दूसरे को दुखी देखकर लज्जित होता था।

निम्न प्रश्नों के उत्तर उपरोक्त गद्यांश के आधार पर दीजिए।

SubQuestion No : 21

Q.21 गद्यांश के रिक्त स्थान (1) के लिए सर्वाधिक उपयुक्त शब्द होगा-

- Ans**
- 1. मन
 - 2. चितन
 - 3. होश
 - 4. ध्यान

Question ID : **65497835446**

Status : **Not Answered**

Chosen Option : --

Comprehension:

अब मनुष्य का सारा (1)_____ शक्ति – सचय, सफलता और जीत पर चला गया है, आज वह जब अपने (2)_____ की ओर चलता है, तब उसे यह देखने की जरूरत (3)_____ नहीं होती कि उसके जूतों के नाल किसकी छाती को (4)_____ रहे हैं। जब तक मनुष्य के भीतर (5)_____ का जोर था, वह अपने को सुखी और दूसरे को दुखी देखकर लज्जित होता था।

निम्न प्रश्नों के उत्तर उपरोक्त गद्यांश के आधार पर दीजिए।

SubQuestion No : 22

Q.22 गद्यांश के रिक्त स्थान (2) के लिए सर्वाधिक उपयुक्त शब्द होगा-

- Ans**
- 1. साधन
 - 2. घर
 - 3. भविष्य
 - 4. लक्ष्य

Question ID : **65497835447**

Status : **Not Answered**

Chosen Option : --

Comprehension:

अब मनुष्य का सारा (1)_____ शक्ति – सचय, सफलता और जीत पर चला गया है, आज वह जब अपने (2)_____ की ओर चलता है, तब उसे यह देखने की जरूरत (3)_____ नहीं होती कि उसके जूतों के नाल किसकी छाती को (4)_____ रहे हैं। जब तक मनुष्य के भीतर (5)_____ का जोर था, वह अपने को सुखी और दूसरे को दुखी देखकर लज्जित होता था।

निम्न प्रश्नों के उत्तर उपरोक्त गद्यांश के आधार पर दीजिए।

SubQuestion No : 23

Q.23 गद्यांश के रिक्त स्थान (3) के लिए सर्वाधिक उपयुक्त शब्द होगा-

- Ans**
- 1. एहसास
 - 2. अनुभूति
 - 3. महसूस
 - 4. प्रकट

Question ID : **65497835448**

Status : **Not Answered**

Chosen Option : --

Comprehension:

अब मनुष्य का सारा (1)_____ शक्ति – सचय, सफलता और जीत पर चला गया है, आज वह जब अपने (2)_____ की ओर चलता है, तब उसे यह देखने की जरूरत (3)_____ नहीं होती कि उसके जूतों के नाल किसकी छाती को (4)_____ रहे हैं। जब तक मनुष्य के भीतर (5)_____ का जोर था, वह अपने को सुखी और दूसरे को दुखी देखकर लज्जित होता था।

निम्न प्रश्नों के उत्तर उपरोक्त गद्यांश के आधार पर दीजिए।

SubQuestion No : 24

Q.24 गद्यांश के रिक्त स्थान (4) के लिए सर्वाधिक उपयुक्त शब्द होगा-

- Ans 1. जोत
 2. मसल
 3. निगल
 4. छील

Question ID : 65497835449

Status : Not Answered

Chosen Option : --

Comprehension:

अब मनुष्य का सारा (1)_____ शक्ति – सचय, सफलता और जीत पर चला गया है, आज वह जब अपने (2)_____ की ओर चलता है, तब उसे यह देखने की जरूरत (3)_____ नहीं होती कि उसके जूतों के नाल किसकी छाती को (4)_____ रहे हैं। जब तक मनुष्य के भीतर (5)_____ का जोर था, वह अपने को सुखी और दूसरे को दुखी देखकर लज्जित होता था।

निम्न प्रश्नों के उत्तर उपरोक्त गद्यांश के आधार पर दीजिए।

SubQuestion No : 25

Q.25 गद्यांश के रिक्त स्थान (5) के लिए सर्वाधिक उपयुक्त शब्द होगा-

- Ans 1. प्रतिस्पर्द्धा
 2. स्वार्थ
 3. बुद्धि
 4. भावना

Question ID : 65497835450

Status : Not Answered

Chosen Option : --

Exam Date	01/12/2021
Exam Time :	9:00 AM - 10:30 AM
Subject	Constable GD 2021

Section : Part A General Intelligence and Reasoning

Q.1 Read the given statements and conclusions carefully. Assuming that the information given in the statements is true, even if it appears to be at variance with commonly known facts, decide which of the given conclusions logically follow(s) from the statements.

Statements:

- I. Some tablets are smartphones.
- II. All smartphones are mobile phones.

Conclusions:

- I. Some mobile phones are tablets.
- II. Some mobile phones are smartphones.

- Ans**
- 1. Neither conclusion I nor II follows.
 - 2. Only conclusion II follows.
 - 3. Only conclusion I follows.
 - 4. Both conclusions I and II follow.

Question ID : 65497832421

Status : Answered

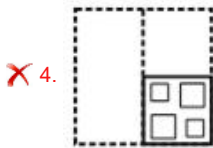
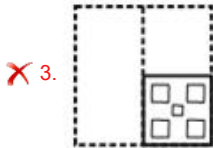
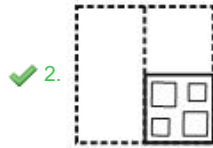
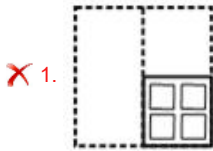
Chosen Option : 4

Q.2 A paper sheet is folded in a particular manner and several punches are made. When unfolded the paper sheet looks like the question figure. From the given options, select the figure that follows the manner in which the paper is folded and punched.

Question figure



Ans



Question ID : 65497832424
 Status : Answered
 Chosen Option : 2

Q.3 Select the option that is related to the fourth number in the same way as the first number is related to the second number and the fifth number is related to the sixth number.

195 : 15 :: ? : 19 :: 273 : 21

- Ans
- 1. 280
 - 2. 247
 - 3. 311
 - 4. 252

Question ID : 65497832404
 Status : Answered
 Chosen Option : 2

Q.4 Study the given pattern carefully and select the number that can replace the question mark (?) in it.

5 6 7
 8 7 9
 189 265 ?

- Ans
- 1. 424
 - 2. 341
 - 3. 395
 - 4. 409

Question ID : 65497832422
 Status : Answered
 Chosen Option : 1

Q.5 Select the number from among the given options that can replace the question mark (?) in the following series.

7, 7, 10.5, 21, 52.5, ?

- Ans 1. 157.5
 2. 105
 3. 163.5
 4. 145

Question ID : 65497832414
 Status : Answered
 Chosen Option : 1

Q.6 Six poets, A, B, C, D, E and F, are sitting opposite to each other in a circle, facing towards the centre. A is opposite to E. F is adjacent to E. A is adjacent to C. B is sitting immediate right to D. C is opposite to B. Who is 5th to the left of B?

- Ans 1. A
 2. E
 3. D
 4. F

Question ID : 65497832418
 Status : Answered
 Chosen Option : 2

Q.7 Select the option that is related to the third term in the same way as the second term is related to the first term.

SANITY : OBTZUJ :: FOSTER : ?

- Ans 1. TPGSFU
 2. TPESFV
 3. TQGSGU
 4. TGPHFU

Question ID : 65497832425
 Status : Answered
 Chosen Option : 1

Q.8 In a certain code language, 'DEACTIVATION' is written as 'CAEDAVITNOIT'. How will 'FACILITATION' be written in that language?

- Ans 1. ICFTAAILNOIT
 2. ICFAATILNOIT
 3. ICFTILAANOIT
 4. ICAFATILNOIT

Question ID : 65497832420
 Status : Answered
 Chosen Option : 4

Q.9 Select the letter-cluster from among the given options that can replace the question mark (?) in the following series.

MRV, QVZ, UZD, YDH, ?

- Ans
- 1. CHL
 - 2. CGM
 - 3. DHE
 - 4. CFN

Question ID : 65497832416
 Status : Answered
 Chosen Option : 1

Q.10 Select the figure from among the given options that can replace the question mark (?) in the following series.



- Ans
- 1.
 - 2.
 - 3.
 - 4.

Question ID : 65497832411
 Status : Answered
 Chosen Option : 4

Q.11 Select the correct option that indicates the arrangement of the given words in the order in which they appear in an English dictionary.

1. Tamale
2. Tamagotchi
3. Tamarind
4. Tamarack
5. Tamable

- Ans
- 1. 1, 3, 4, 5, 2
 - 2. 2, 1, 3, 4, 5
 - 3. 5, 2, 1, 4, 3
 - 4. 1, 5, 2, 4, 3

Question ID : 65497832408
 Status : Answered
 Chosen Option : 3

Q.12 There are two computer rooms, Lab A and Lab B. If 10 students are sent from Lab A to Lab B, then the number of students in each room will be the same. If 26 students are sent from Lab B to Lab A, then the number of students in Lab A will be triple the number of students in Lab B. The number of students in Lab B is:

- Ans
- 1. 82
 - 2. 78
 - 3. 62
 - 4. 98

Question ID : 65497832423
Status : Answered
Chosen Option : 3

Q.13 Arpita, Chetan, Insiya, Lohita, Manuvi and Yukti are sitting around a circular table facing its centre. Chetan is sitting to the immediate right of Manuvi. Arpita is sitting between Insiya and Yukti. Yukti is sitting second to the right of Manuvi. Who is sitting between Lohita and Arpita?

- Ans
- 1. Manuvi
 - 2. Insiya
 - 3. Chetan
 - 4. Yukti

Question ID : 65497832403
Status : Answered
Chosen Option : 2

Q.14 Four letter-clusters have been given, out of which three are alike in some manner and one is different. Select the letter-cluster that is different.

- Ans
- 1. FLO
 - 2. LRU
 - 3. PVY
 - 4. GMQ

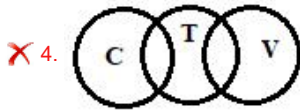
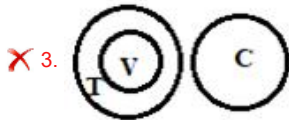
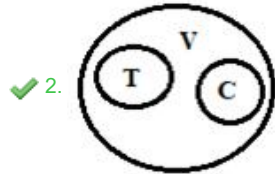
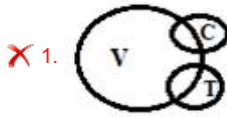
Question ID : 65497832412
Status : Answered
Chosen Option : 4

Q.15 Select the Venn diagram that best represents the relationship between the following classes.

Vehicles, Truck, Car

(V: Vehicles; C: Car; T: Truck)

Ans



Question ID : 65497832419
 Status : Answered
 Chosen Option : 2

Q.16 Select the number from among the given options that can replace the question mark (?) in the following series.

3, 15, 60, 180, ?

- Ans
- ✗ 1. 260
 - ✓ 2. 360
 - ✗ 3. 240
 - ✗ 4. 199

Question ID : 65497832410
 Status : Answered
 Chosen Option : 2

Q.17 'Sweater' is related to 'Wool' in the same way as 'Coin' is related to '_____'.

- Ans
- ✓ 1. Metal
 - ✗ 2. King
 - ✗ 3. Money
 - ✗ 4. Currency

Question ID : 65497832417
 Status : Answered
 Chosen Option : 1

Q.18 What will be the value of the given expression if 'A' means '+', 'B' means '-', 'C' means 'x', and 'D' means '÷'?

12 A 9 C (17 B 6) B 24 A (28 D 7) = ?

- Ans
- 1. 51
 - 2. 104
 - 3. 91
 - 4. 83

Question ID : 65497832405
 Status : Answered
 Chosen Option : 3

Q.19 Select the option in which the given figure is embedded (rotation is NOT allowed).



Ans

- 1.
- 2.
- 3.
- 4.

KD Job Updates

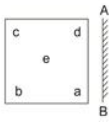
Question ID : 65497832407
 Status : Answered
 Chosen Option : 1

Q.20 In a certain code language, 'GINGER' is coded as '30-30' and 'RADISH' is coded as '23-36'. How will 'TOMATO' be coded in that language?

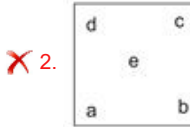
- Ans
- 1. 35-45
 - 2. 39-41
 - 3. 49-39
 - 4. 48-36

Question ID : 65497832413
 Status : Answered
 Chosen Option : 4

Q.21 Select the correct mirror image of the given figure when the mirror is placed at 'AB' as shown.



Ans



Question ID : 65497832415
 Status : Answered
 Chosen Option : 3

Q.22 Select the combination of letters that when sequentially placed in the blanks of the given series will complete the sequence.

R _ T _ T U _ _ R U _ S _ S T

Ans 1. SSTURR

2. SRTURU

3. STURSR

4. URTSSR

Question ID : 65497832409
 Status : Answered
 Chosen Option : 1

Q.23 In a certain code language, ZOMBIE is written as BEIMOZ, and FLEX is written as EFLX. How will PRODUCT be written in that language?

Ans 1. CDPORTU

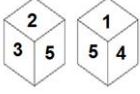
2. CDPORUT

3. CDOPRTU

4. CDORPTU

Question ID : 65497832426
 Status : Answered
 Chosen Option : 3

Q.24 Two different positions of the same dice are shown, the six faces of which are numbered from 1 to 6. Select the number that will be on the face opposite to the face having '6'.



- Ans
- 1. 3
 - 2. 5
 - 3. 4
 - 4. 2

Question ID : 65497832406

Status : Answered

Chosen Option : 2

Q.25 If 'A + B' means 'A is the father of B', 'A @ B' means 'A is the brother of B', and 'A & B' means 'A is the daughter of B', then how is P related to V in the following expression?

S + P + R @ Q & T & V

- Ans
- 1. Son
 - 2. Father-in-law
 - 3. Son-in-law
 - 4. Daughter-in-law

Question ID : 65497832427

Status : Answered

Chosen Option : 3

Section : Part B General Knowledge and General Awareness

Q.1 एलिफैंटा गुफाओं में _____ संप्रदाय से जुड़े शैल चित्रों (रॉक आर्ट) का संग्रह है।

- Ans
- 1. तीर्थंकर महावीर
 - 2. विष्णु
 - 3. बुद्ध
 - 4. शिव

Question ID : 65497832434

Status : Answered

Chosen Option : 1

Q.2 दिल्ली सल्तनत में सैन्य कमांडरों को सौंपी गई प्रादेशिक इकाइयों को _____ के रूप में जाना जाता था।

- Ans
- 1. इक्ता (Iqta)
 - 2. उशर (Ushr)
 - 3. खराज (Kharaj)
 - 4. हुंडी (Hundi)

Question ID : 65497832449

Status : Answered

Chosen Option : 2

Q.3 शिशुओं में जन्म के समय निम्नलिखित में से कौन सी हड्डी नहीं होती?

- Ans
- 1. श्रोणि (Pelvic)
 - 2. कॉलर (Collar)
 - 3. गाल (Cheek)
 - 4. जानुका (Kneecap)

Question ID : 65497832430

Status : Answered

Chosen Option : 1

Q.4 भारत के संविधान के निम्नलिखित प्रावधानों में से कौन सा प्रावधान संसद के साधारण बहुमत द्वारा संशोधित किया जा सकता है?

- Ans
- 1. सातवीं अनुसूची की कोई भी सूची
 - 2. संसद में गणपूर्ति (कोरम)
 - 3. राष्ट्रपति का निर्वाचन और उसकी प्रक्रिया
 - 4. मौलिक अधिकार

Question ID : 65497832442

Status : Answered

Chosen Option : 2

Q.5 निम्नलिखित में से किस मंत्रालय ने सितंबर 2021 में 'शिक्षक पर्व' का आयोजन किया?

- Ans
- 1. शिक्षा मंत्रालय
 - 2. युवा कार्यक्रम और खेल मंत्रालय
 - 3. संस्कृति मंत्रालय
 - 4. श्रम एवं रोजगार मंत्रालय

Question ID : 65497832452

Status : Answered

Chosen Option : 1

Q.6 Which of the following things found at the site of Harappa, did engineers take away to build the first railway lines in Punjab in present-day Pakistan?

- Ans
- 1. Doors
 - 2. Bricks
 - 3. Iron tracks
 - 4. Bronze beams

Question ID : 65497832447

Status : Answered

Chosen Option : 2

Q.7 लोकप्रिय नृत्य 'लाहो' किस भारतीय राज्य से संबंधित है?

- Ans
- 1. मेघालय
 - 2. बिहार
 - 3. उत्तर प्रदेश
 - 4. हरियाणा

Question ID : 65497832437

Status : Answered

Chosen Option : 1

Q.8 'ऑपरेशन थंडर 2020' निम्न से संबंधित है:

- Ans
- 1. चक्रवाती तूफान से राहत और बचाव अभियान
 - 2. पर्यावरणीय अपराधों के खिलाफ कार्रवाई
 - 3. COVID-19 (कोरोना) के लिए वैक्सीन
 - 4. आतंकवाद के खिलाफ सैन्य कार्रवाई

Question ID : 65497832443

Status : Answered

Chosen Option : 1

Q.9 नेपाल के कवि, भानुभक्त आचार्य, _____ का संस्कृत से नेपाली भाषा में अनुवाद करने के लिए प्रसिद्ध हैं।

- Ans
- 1. रामायण
 - 2. योग सूत्र
 - 3. मनुस्मृति
 - 4. महाभारत

Question ID : 65497832439

Status : Answered

Chosen Option : 1

Q.10 निम्नलिखित में से कौन सा ग्रामीण परिवारों को प्रत्यक्ष ऋण सहायता प्रदान नहीं करता है?

- Ans
- 1. क्षेत्रीय ग्रामीण बैंक
 - 2. कृषि व्यापारी
 - 3. सहकारी ऋण समितियाँ
 - 4. वित्त मंत्रालय

Question ID : 65497832444

Status : Answered

Chosen Option : 4

Q.11 Which of the following is a night blooming flower?

- Ans
- 1. Gazania daisy
 - 2. Angel's trumpet
 - 3. Jamaican feverplant
 - 4. Venice mallow

Question ID : 65497832429

Status : Answered

Chosen Option : 1

Q.12 निम्नलिखित में से कौन सा युग्म गलत है?

- Ans
- 1. शर्की राजवंश - पंजाब
 - 2. अहोम राजवंश - असम
 - 3. गजपति राजवंश - ओडिशा
 - 4. मेवाड़ राजवंश - राजस्थान

Question ID : 65497832450

Status : Answered

Chosen Option : 1

Q.13 जैसा कि केंद्रीय बजट 2020 में घोषित किया गया है, इलेक्ट्रिक वाहनों की खरीद हेतु लिए गए ऋण पर दिए गए ब्याज पर कटौती के रूप में ₹ _____ तक की राशि का दावा किया जा सकता है।

- Ans 1. 1.5 लाख
 2. 5 लाख
 3. 2 लाख
 4. 2.5 लाख

Question ID : 65497832445
 Status : Answered
 Chosen Option : 3

Q.14 निम्नलिखित में से कृष्णा नदी की एक सहायक नदी कौन सी है?

- Ans 1. प्रणीता
 2. पूर्णा
 3. मंजरा
 4. घाटप्रभा

Question ID : 65497832446
 Status : Answered
 Chosen Option : 4

Q.15 According to 'India State of Forest Report 2019', which of the following states of India has the maximum amount of forest covered area?

- Ans 1. Andhra Pradesh
 2. Nagaland
 3. Madhya Pradesh
 4. Assam

Question ID : 65497832441
 Status : Answered
 Chosen Option : 1

Q.16 The prize money for the _____ Award was increased from the previous amount of ₹7.5 lakhs to ₹25 lakhs in 2020.

- Ans 1. Rajiv Gandhi Khel Ratna
 2. Dronacharya (Lifetime)
 3. Dronacharya (Regular)
 4. Arjuna

Question ID : 65497832448
 Status : Answered
 Chosen Option : 1

Q.17 Who among the following won the Linz Open Tennis Singles title for 2020?

- Ans 1. Sofia Kenin
 2. Serena Williams
 3. Aryna Sabalenka
 4. Elise Martens

Question ID : 65497832440
 Status : Answered
 Chosen Option : 3

Q.18 उन जीवों को क्या कहा जाता है जो शिशु संततियों को जन्म देते हैं?

- Ans
- 1. विखण्डनशील (फिसिपरस)
 - 2. जरायुज (विविपरस)
 - 3. अंडज (ओविपरस)
 - 4. अंडजरायुज (ओवोविविपरस)

Question ID : 65497832433
Status : Answered
Chosen Option : 2

Q.19 निम्नलिखित में से कौन 'सेविंग कैपिटलिज्म फ्रॉम द कैपिटलिस्ट' पुस्तक के लेखक हैं?

- Ans
- 1. रघुराम राजन
 - 2. बिमल जालान
 - 3. उर्जित पटेल
 - 4. शक्तिकांत दास

Question ID : 65497832431
Status : Answered
Chosen Option : 1

Q.20 Who is the winner of World Games Athlete of the Year Award 2019?

- Ans
- 1. Savita Poonia
 - 2. Ritu Rani
 - 3. Rani Rampal
 - 4. Jaspreet Kaur

Question ID : 65497832432
Status : Answered
Chosen Option : 3

Q.21 नवंबर 2020 में, भारत _____ ऐसा देश बन गया जिसके पास अपनी स्वतंत्र क्षेत्रीय नौवहन उपग्रह प्रणाली है। इसे अंतरराष्ट्रीय सामुद्रिक संगठन (IMO) द्वारा 'विश्वव्यापी रेडियो नेविगेशन प्रणाली' (WWRNS) के एक भाग के रूप में मान्यता प्राप्त है।

- Ans
- 1. पाँचवाँ
 - 2. तीसरा
 - 3. चौथा
 - 4. छठा

Question ID : 65497832435
Status : Answered
Chosen Option : 3

Q.22 _____ आंशिक परिसीमित तटीय जल निकाय होता है जहाँ नदियों और जलधाराओं के मीठे पानी में महासागरों के खारे पानी का मिश्रण होता है।

- Ans
- 1. मुहाना (एशुअरी)
 - 2. डेल्टा
 - 3. मरूद्यान
 - 4. लैगून

Question ID : 65497832438
Status : Answered
Chosen Option : 2

Q.23 निम्नलिखित में से किस भारतीय सितारवादक और प्रमुख संगीतज्ञ ने 20 वीं शताब्दी की शुरुआत में, एक संकेतन प्रणाली विकसित की और भारतीय उपमहाद्वीप की संगीत प्रथाओं को वर्गीकृत किया जो कि पहले मौखिक परंपरा से आगे बढ़ती रही थीं?

- Ans 1. विष्णु नारायण भातखंडे
 2. सिद्धार खान
 3. मानिकचंद दुबे
 4. हाजी विलायत अली खान

Question ID : 65497832428
 Status : Answered
 Chosen Option : 4

Q.24 In which of the following cities is the head office of SEBI located?

- Ans 1. Gandhinagar
 2. Mumbai
 3. Chandigarh
 4. New Delhi

Question ID : 65497832436
 Status : Answered
 Chosen Option : 2

Q.25 भारत में अनियमित जमा योजना प्रतिबंध अधिनियम वर्ष _____ में लागू किया गया था।

- Ans 1. 2020
 2. 2019
 3. 2021
 4. 2018

Question ID : 65497832451
 Status : Answered
 Chosen Option : 2

Section : Part C Elementary Mathematics

Q.1 Hari bought two articles A and B for a total of ₹1,250. He sold A at a loss of 20% and B at a profit of 15%. If the selling price of B was ₹75 less than two times that of A, then the cost price (in ₹) of A was:

- Ans 1. 650
 2. 550
 3. 600
 4. 525

Question ID : 65497832474
 Status : Answered
 Chosen Option : 2

Q.2 A man borrows ₹13,000 to be paid back with the compound interest at a rate of 8% per annum compounded annually by the end of 2 years in two equal yearly instalments. How much will each instalment be?

- Ans**
- 1. ₹7,500
 - 2. ₹7,725
 - 3. ₹7,290
 - 4. ₹7,250

Question ID : 65497832470
Status : Answered
Chosen Option : 3

Q.3 The value of $\frac{4}{5} \div 3\frac{1}{4}$ of $\frac{8}{13} - \frac{\frac{1}{7} - \frac{1}{8}}{\frac{1}{7} + \frac{1}{8}} \times 4\frac{2}{7} + \frac{3}{5}$ is equal to:

- Ans**
- 1. $\frac{5}{7}$
 - 2. $\frac{2}{7}$
 - 3. $\frac{3}{7}$
 - 4. $\frac{6}{7}$

Question ID : 65497832459
Status : Answered
Chosen Option : 1

Q.4 Express the given fraction percentage as a ratio in the lowest term.

$$\frac{75}{17}\%$$

- Ans**
- 1. 3 : 67
 - 2. 3 : 68
 - 3. 68 : 3
 - 4. 3 : 57

Question ID : 65497832464
Status : Answered
Chosen Option : 2

Q.5 Mrs. Gupta invested a sum of ₹50,000 in fixed deposit for 1 year at the rate of 8% per annum compound interest compounded semi-annually. What amount will she get on maturity of the fixed deposit?

- Ans**
- 1. ₹58,000
 - 2. ₹54,000
 - 3. ₹54,080
 - 4. ₹50,416

Question ID : 65497832456
Status : Answered
Chosen Option : 3

Q.6 A train can travel 50% faster than a car. Both start from point A at the same time and reach point B, 81 kms away from A, at the same time. On the way, however, the train lost about 12 minutes while stopping at the stations. The speed of the car is (rounded off to the nearest integer):

- Ans**
- 1. 85 km/h
 - 2. 95 km/h
 - 3. 105 km/h
 - 4. 135 km/h

Question ID : 65497832466
Status : Answered
Chosen Option : 4

Q.7 Find the number of lead balls, each 2 cm in diameter, which can be made from a sphere of 18 cm of diameter.

- Ans**
- 1. 729
 - 2. 827
 - 3. 843
 - 4. 972

Question ID : 65497832471
Status : Answered
Chosen Option : 1

Q.8 A man covered a distance of 245 km in 7 hours on a scooter. How much distance (in km) can be covered on a electric cycle in 4 hours, if he rides the electric cycle at $\frac{3}{7}$ of the speed of the scooter?

- Ans**
- 1. 45
 - 2. 35
 - 3. 50
 - 4. 60

Question ID : 65497832460
Status : Answered
Chosen Option : 4

Q.9 Three numbers are in the ratio 4 : 3 : 7 and their HCF is 6. What is the sum of the three numbers?

- Ans**
- 1. 84
 - 2. 42
 - 3. 98
 - 4. 56

Question ID : 65497832453
Status : Answered
Chosen Option : 1

Q.10 Two pipes A and B can empty a full tank in 10 minutes and 15 minutes, respectively, whereas pipe C alone can fill the same (empty) tank in 12 minutes. When the tank is full, A and B are opened for 4 minutes and then only pipe A is closed, and C is opened instantly (with B). How much time (in minutes) will it take now to fill the tank completely?

- Ans**
- 1. 20
 - 2. 40
 - 3. 25
 - 4. 30

Question ID : 65497832477
 Status : Answered
 Chosen Option : 2

Q.11 Three numbers are such that the first number is 30% more than the third number and the second number is 40% less than the third number. What is the ratio of the first number to the sum of the first number and the second number?

- Ans**
- 1. $\frac{13}{19}$
 - 2. $\frac{9}{13}$
 - 3. $\frac{6}{13}$
 - 4. $\frac{6}{19}$

Question ID : 65497832455
 Status : Answered
 Chosen Option : 1

Q.12 The average marks of 100 students in a class were 80. The average marks of the top 15 students and the bottom 15 students in the merit list were 84 and 74, respectively. Find the average marks of the remaining students (correct to two decimal places).

- Ans**
- 1. 79.43
 - 2. 82.42
 - 3. 70.42
 - 4. 80.43

Question ID : 65497832462
 Status : Answered
 Chosen Option : 4

Q.13 The simple interest on a certain sum of money for three and a half years at 10% per annum is ₹55 less than the simple interest on the same sum for four and a half years at 9% per annum. What is the sum?

- Ans**
- 1. ₹407.40
 - 2. ₹975
 - 3. ₹1,000
 - 4. ₹500

Question ID : 65497832458
 Status : Answered
 Chosen Option : 3

Q.14 There is a discount of 12.5% on 6 shirts marked at ₹8,400. How many shirts can be bought with ₹4,900?

- Ans**
- 1. 6
 - 2. 5
 - 3. 7
 - 4. 4

Question ID : 65497832461
Status : Answered
Chosen Option : 4

Q.15 The price of a sweater was slashed from ₹1422 to ₹1264 by a shopkeeper in the winter season. Find the rate of discount given by him (correct to two decimal places).

- Ans**
- 1. 11.11%
 - 2. 12.11%
 - 3. 9.11%
 - 4. 10%

Question ID : 65497832463
Status : Answered
Chosen Option : 1

Q.16 The price of an article increases by 20% every year. If the difference between its price at the end of the third and that of the fourth year is ₹86.40, then its price (in ₹) at the end of the second year is:

- Ans**
- 1. 360
 - 2. 420
 - 3. 350
 - 4. 400

Question ID : 65497832473
Status : Answered
Chosen Option : 1

Q.17 The average of nine numbers is 20.6. The average of three of them is 26.1, while the average of another three of these numbers is 15.2. What is the average of the remaining three numbers?

- Ans**
- 1. 21.5
 - 2. 20.5
 - 3. 35.75
 - 4. 21

Question ID : 65497832454
Status : Answered
Chosen Option : 2

Q.18 A shopkeeper bought two pairs of shoes at the same price and sold one pair at a profit of 15% and the other pair at a loss of 5%. If the difference between their selling prices is ₹140, then how much profit did he earn in the whole transaction?

- Ans**
- 1. ₹210
 - 2. ₹35
 - 3. ₹70
 - 4. ₹7

Question ID : 65497832457
Status : Answered
Chosen Option : 3

Q.19 How much maximum water can be poured into an empty cylindrical tank having the depth of 7 m and radius of 20 m?

(Take $\pi = \frac{22}{7}$)

- Ans**
- 1. 8800 m³
 - 2. 4800 m³
 - 3. 8000 m³
 - 4. 4000 m³

Question ID : 65497832468
 Status : Answered
 Chosen Option : 1

Q.20 The ratio of X's and Y's incomes in the last year was 4 : 5. The ratio of their own incomes of the last year to those of this year is 3 : 4 and 2 : 3, respectively. If the sum of their present incomes is ₹15,400, what is the present income of X?

- Ans**
- 1. ₹6,400
 - 2. ₹7,900
 - 3. ₹9,000
 - 4. ₹7,500

Question ID : 65497832469
 Status : Answered
 Chosen Option : 1

Q.21 If the HCF of 273, 312 and 351 is x , then x lies between:

- Ans**
- 1. 35 and 40
 - 2. 25 and 30
 - 3. 30 and 35
 - 4. 40 and 45

Question ID : 65497832472
 Status : Answered
 Chosen Option : 1

Q.22 By selling an article for ₹210.80, a man loses 15%. To gain 9.5%, he should sell it for:

- Ans**
- 1. ₹280.45
 - 2. ₹265.40
 - 3. ₹291.50
 - 4. ₹271.56

Question ID : 65497832476
 Status : Answered
 Chosen Option : 4

Q.23 आरंभ में, रेखा इस दर से कार्य करती है, कि वह एक कार्य को 24 h में पूरा कर सकती है, लेकिन वह उस दर से केवल 8 h तक ही कार्य करती है। उसके बाद, वह इस दर से कार्य करती है कि वह शेष कार्य को 9 h में पूरा कर सकती है। यदि रेखा को एक कार्यवधि में ही वह कार्य पूरा करना है, तो उस कार्य को पूरा करने में उसे कुल कितने h का समय लगेगा?

- Ans
- 1. 12
 - 2. 10
 - 3. 14
 - 4. 16

Question ID : 65497832465
Status : Answered
Chosen Option : 3

Q.24 If $0.25 : x :: 5 : 6$, then x is equal to:

- Ans
- 1. 0.9
 - 2. 0.3
 - 3. 1.3
 - 4. 0.6

Question ID : 65497832467
Status : Answered
Chosen Option : 2

Q.25 The value of $60 \div 16 \times 2 - [76 \div 5 \text{ of } 19 - 15 \div 8 \times (21 - 25) - 3] \div 53$ is:

- Ans
- 1. $6\frac{4}{15}$
 - 2. $3\frac{7}{10}$
 - 3. $7\frac{2}{5}$
 - 4. $4\frac{2}{5}$

Question ID : 65497832475
Status : Answered
Chosen Option : 3

Section : Part D English

Q.1 Select the correctly spelt word.

- Ans
- 1. Vigorously
 - 2. Carying
 - 3. Metallic
 - 4. Crystalisation

Question ID : 65497832485
Status : Answered
Chosen Option : 1

Q.2 Select the most appropriate meaning of the given idiom.

Full steam ahead

- Ans
- 1. Move very noisily
 - 2. Make a train journey
 - 3. Miss the train before reaching
 - 4. Move onward with determination

Question ID : 65497832487
Status : Answered
Chosen Option : 4

Q.3 Select the most appropriate ANTONYM of the given word.

Assuage

- Ans
- 1. Decrease
 - 2. Relieve
 - 3. Soothe
 - 4. Provoke

Question ID : 65497832490
Status : Answered
Chosen Option : 4

Q.4 Select the option that is closest in meaning to the underlined idiom/phrase in the given sentence.

Please cut down on your expenses now or you will face difficulties in the future.

- Ans
- 1. recover
 - 2. raise
 - 3. refuse
 - 4. reduce

Question ID : 65497832492
Status : Answered
Chosen Option : 4

Q.5 Select the option that can be used as a one-word substitute for the given group of words.

A place where antiques are kept

- Ans
- 1. Museum
 - 2. Hangar
 - 3. Resort
 - 4. Orphanage

Question ID : 65497832486
Status : Answered
Chosen Option : 1

Q.6 Select the **INCORRECTLY** spelt word.

- Ans 1. Palace
 2. Paint
 3. Pecket
 4. Peddle

Question ID : 65497832479
Status : Answered
Chosen Option : 3

Q.7 Select the most appropriate option that can substitute the underlined segment in the given sentence. If there is no need to substitute it, select 'No substitution required'.

No sooner he had returned home then he saw the letter lying on the table.

- Ans 1. had he returned home when
 2. No substitution required
 3. he returned home than
 4. had he returned home than

Question ID : 65497832491
Status : Answered
Chosen Option : 4

Q.8 The following sentence has been split into four segments. Identify the segment that contains a grammatical error.

God is great / and we could / be grateful to him for all the gifts / he has bestowed on us.

- Ans 1. he has bestowed on us
 2. God is great
 3. and we could
 4. be grateful to him for all the gifts

Question ID : 65497832482
Status : Answered
Chosen Option : 3

Q.9 Select the most appropriate **SYNONYM** of the given word.

Wily

- Ans 1. Frank
 2. Crafty
 3. Friendly
 4. Honest

Question ID : 65497832496
Status : Answered
Chosen Option : 2

Q.10 The following sentence has been split into four segments. Identify the segment that contains a grammatical error.

Peter said / then / he was / feeling unwell.

- Ans
- 1. Peter said
 - 2. feeling unwell
 - 3. he was
 - 4. then

Question ID : 65497832495
Status : Answered
Chosen Option : 4

Q.11 Select the option that can be used as a one-word substitute for the given group of words.

Person who is not an expert in a field of art or music

- Ans
- 1. Pariah
 - 2. Amateur
 - 3. Patron
 - 4. Eccentric

Question ID : 65497832484
Status : Answered
Chosen Option : 2

Q.12 Select the most appropriate ANTONYM of the given word.

Certainty

- Ans
- 1. Unreasonable
 - 2. Prolong
 - 3. Doubt
 - 4. Divulge

Question ID : 65497832483
Status : Answered
Chosen Option : 3

Q.13 Select the most appropriate synonym of the given word.

Enormous

- Ans
- 1. Massive
 - 2. Expensive
 - 3. Limited
 - 4. Ordinary

Question ID : 65497832489
Status : Answered
Chosen Option : 1

Q.14 Select the option that will improve the underlined part of the given sentence. In case no improvement is needed, select 'No improvement required'.

Not only did he run away from home, but also stole the money.

- Ans
- 1. He only did not run
 - 2. Only he did not ran
 - 3. Not only did he ran
 - 4. No improvement required

Question ID : 65497832494
Status : Answered
Chosen Option : 4

Q.15 Select the most appropriate option to fill in the blank.

Look at the hippo _____ about happily in the river.

- Ans
- 1. crackling
 - 2. stammering
 - 3. sputtering
 - 4. splashing

Question ID : 65497832480
Status : Answered
Chosen Option : 4

Q.16 Select the most appropriate option that can substitute the underlined segment in the given sentence. If there is no need to substitute it, select 'No substitution required'.

They have decorated their house nicely, didn't they?

- Ans
- 1. No substitution required
 - 2. have they
 - 3. did they
 - 4. haven't they

Question ID : 65497832478
Status : Answered
Chosen Option : 4

Q.17 The following sentence has been divided into parts. One of them contains an error. Select the part that contains the error from the given options.

We forgot / to wish Susan / in her birthday / this year.

- Ans
- 1. to wish Susan
 - 2. We forgot
 - 3. in her birthday
 - 4. this year

Question ID : 65497832488
Status : Answered
Chosen Option : 3

Q.18 Select the most appropriate option to fill in the blank.

In the year 1973, there were only 9 tiger reserves, but _____ the number has risen to fifty.

- Ans 1. consequently
 2. gradually
 3. adamantly
 4. technically

Question ID : 65497832481
 Status : Answered
 Chosen Option : 2

Q.19 Select the option that can be used as a one-word substitute for the given group of words.

Dwarf varieties of trees and shrubs grown in pots

- Ans 1. Shrimp
 2. Pygmy
 3. Bonsai
 4. Bonanza

Question ID : 65497832497
 Status : Answered
 Chosen Option : 2

Q.20 Select the most appropriate option to fill in the blank.

The child _____ that he had broken the vase.

- Ans 1. collected
 2. demanded
 3. admitted
 4. requested

Question ID : 65497832493
 Status : Answered
 Chosen Option : 3

Comprehension:

In the following passage, some words have been deleted. Read the passage carefully and select the most appropriate option to fill in each blank.

Once there were two brothers. One brother was (1) _____ poor farmer. He worked in the fields, and (2) _____ the weather was bad, he (3) _____ no food. But he was kind and worked a (4) _____. The other brother was a rich man (5) _____ worked on a ship. He was not kind and often cheated people.

SubQuestion No : 21

Q.21 Select the most appropriate option to fill in blank no. 1.

- Ans 1. a
 2. simply
 3. the
 4. only

Question ID : 65497832499
 Status : Answered
 Chosen Option : 1

Comprehension:

In the following passage, some words have been deleted. Read the passage carefully and select the most appropriate option to fill in each blank.

Once there were two brothers. One brother was (1) _____ poor farmer. He worked in the fields, and (2) _____ the weather was bad, he (3) _____ no food. But he was kind and worked a (4) _____. The other brother was a rich man (5) _____ worked on a ship. He was not kind and often cheated people.

SubQuestion No : 22

Q.22 Select the most appropriate option to fill in blank no. 2.

Ans 1. when

2. what

3. after

4. while

Question ID : 65497832500

Status : Answered

Chosen Option : 4

Comprehension:

In the following passage, some words have been deleted. Read the passage carefully and select the most appropriate option to fill in each blank.

Once there were two brothers. One brother was (1) _____ poor farmer. He worked in the fields, and (2) _____ the weather was bad, he (3) _____ no food. But he was kind and worked a (4) _____. The other brother was a rich man (5) _____ worked on a ship. He was not kind and often cheated people.

SubQuestion No : 23

Q.23 Select the most appropriate option to fill in blank no. 3.

Ans 1. will have

2. had

3. may have

4. has

Question ID : 65497832501

Status : Answered

Chosen Option : 2

Comprehension:

In the following passage, some words have been deleted. Read the passage carefully and select the most appropriate option to fill in each blank.

Once there were two brothers. One brother was (1) _____ poor farmer. He worked in the fields, and (2) _____ the weather was bad, he (3) _____ no food. But he was kind and worked a (4) _____. The other brother was a rich man (5) _____ worked on a ship. He was not kind and often cheated people.

SubQuestion No : 24

Q.24 Select the most appropriate option to fill in blank no. 4.

Ans 1. lots

2. much

3. hard

4. lot

Question ID : 65497832502

Status : Answered

Chosen Option : 4

Comprehension:

In the following passage, some words have been deleted. Read the passage carefully and select the most appropriate option to fill in each blank.

Once there were two brothers. One brother was (1) _____ poor farmer. He worked in the fields, and (2) _____ the weather was bad, he (3) _____ no food. But he was kind and worked a (4) _____. The other brother was a rich man (5) _____ worked on a ship. He was not kind and often cheated people.

SubQuestion No : 25

Q.25 Select the most appropriate option to fill in blank no. 5.

- Ans 1. that
 2. who
 3. which
 4. whom

Question ID : 65497832503
 Status : Answered
 Chosen Option : 2

Section : Part D Hindi

Q.1 कौनसा शब्द 'वायस' का समानार्थी शब्द नहीं है?

- Ans 1. काक
 2. हरीत
 3. काग
 4. एकाक्ष

Question ID : 65497832507
 Status : Not Answered
 Chosen Option : --

Q.2 'सम्मुख' का विलोम शब्द होगा-

- Ans 1. मुख
 2. प्रमुख
 3. विमुख
 4. उन्मुख

Question ID : 65497832522
 Status : Not Answered
 Chosen Option : --

Q.3 रिक्त स्थान को भरने के लिए सबसे उपयुक्त शब्द का चयन करें।

विषयों में _____ होने से सर्वनाश होता है।

- Ans 1. प्रेम
 2. अनुराग
 3. स्नेह
 4. आसक्ति

Question ID : 65497832518
 Status : Not Answered
 Chosen Option : --

Q.4 दिए गए वाक्य में रेखांकित खंड को प्रतिस्थापित करने के लिए सबसे उपयुक्त विकल्प का चयन करें। यदि इसे प्रतिस्थापित करने की आवश्यकता नहीं है, तो विकल्प 'किसी बदलाव की आवश्यकता नहीं है' का चयन करें।

प्राचार्य ने हमको समझाया की जो परिश्रम करेगा वह सफल होगा।

- Ans
- ✓ 1. प्राचार्य ने हमें समझाया कि
 - ✗ 2. प्रचार्य ने हमको समझाया कि
 - ✗ 3. प्राचार्य ने हमें समझाया की
 - ✗ 4. किसी बदलाव की आवश्यकता नहीं है।

Question ID : 65497832514

Status : Not Answered

Chosen Option : --

Q.5 दिए गए वाक्य का वह भाग ज्ञात करें जिसमें कोई त्रुटि है। यदि कोई त्रुटि नहीं है, तो 'कोई त्रुटि नहीं है' चुनें।

हमें भोगविलास के लिए (1)/ धन नष्ट न (2)/ करना चाहिए। (3)/ कोई त्रुटि नहीं है(4)

- Ans
- ✗ 1. 2
 - ✗ 2. 4
 - ✗ 3. 3
 - ✓ 4. 1

Question ID : 65497832506

Status : Not Answered

Chosen Option : --

Q.6 दिए गए शब्द का विलोम चुनिए।

सकाम

- Ans
- ✗ 1. विषम
 - ✗ 2. कुकाम
 - ✓ 3. निष्काम
 - ✗ 4. शार्थक

Question ID : 65497832509

Status : Not Answered

Chosen Option : --

Q.7 'गीदड़ भभकी' मुहावरे का अर्थ बताइए।

- Ans
- ✗ 1. जान से मारने की धमकी
 - ✗ 2. अपशब्द कहना
 - ✓ 3. झूठी धमकी
 - ✗ 4. धोखा देने का प्रयास

Question ID : 65497832512

Status : Not Answered

Chosen Option : --

Q.8 'ऊपरी दिखावे के रूप में होने वाला' वाक्यांश के लिए एक शब्द होगा-

- Ans 1. औपचारिक
 2. अनौपचारिक
 3. उल्लेखनीय
 4. आधिकारिक

Question ID : 65497832523
 Status : Not Answered
 Chosen Option : --

Q.9 'जो दिये जाने योग्य न हो' वाक्यांश के लिए एक शब्द होगा-

- Ans 1. देय
 2. अज्ञेय
 3. गेय
 4. अदेय

Question ID : 65497832517
 Status : Not Answered
 Chosen Option : --

Q.10 सही वर्तनी वाले शब्द का चयन कीजिए।

- Ans 1. प्रस्तुतीकरण
 2. प्रस्तुतिकरण
 3. प्रस्तुतीकरण
 4. प्रस्तुतिकरण

Question ID : 65497832504
 Status : Not Answered
 Chosen Option : --

Q.11 सही वर्तनी वाले शब्द का चयन कीजिए।

- Ans 1. तत्कालीक
 2. तत्कलीक
 3. तात्कालिक
 4. तत्कालिक

Question ID : 65497832505
 Status : Not Answered
 Chosen Option : --

Q.12 'सुधा' किसका पर्यायवाची है?

- Ans 1. चंद्रमा
 2. पृथ्वी
 3. स्त्री
 4. अमृत

Question ID : 65497832520
 Status : Not Answered
 Chosen Option : --

Q.13 दिये गये वाक्य के किस भाग में त्रुटि है?

मुझे पैसे की आवश्यकता नहीं है।

- Ans 1. आवश्यकता
 2. पैसे की
 3. नहीं है।
 4. मुझे

Question ID : 65497832519
 Status : Not Answered
 Chosen Option : --

Q.14 रिक्त स्थान भरने के लिए सबसे उपयुक्त शब्द का चयन करें।

दुकान से दो किलो मिठाई _____ लो।

- Ans 1. भर
 2. खरीद
 3. माँग
 4. प्राप्त

Question ID : 65497832511
 Status : Not Answered
 Chosen Option : --

Q.15 नीचे दिए वाक्य में रिक्त-स्थान भरने के लिए सबसे उपयुक्त शब्द का चयन करें।

खिड़की के बाहर बारिश का _____ संगीत बज रहा था।

- Ans 1. झिमझीम
 2. झिमझिम
 3. रीमझीम
 4. रिमझिम

Question ID : 65497832516
 Status : Not Answered
 Chosen Option : --

Q.16 दिये गये वाक्यांश के लिए एक शब्द दीजिये।

जिसका विवाह न हुआ हो

- Ans 1. अपरिणीत
 2. अविकारी
 3. अनुरक्त
 4. अपरिग्रह

Question ID : 65497832513
 Status : Not Answered
 Chosen Option : --

Q.17 दिए गए वाक्य में रेखांकित खंड को प्रतिस्थापित करने के लिए सबसे उपयुक्त विकल्प का चयन करें। यदि इसे प्रतिस्थापित करने की आवश्यकता नहीं है, तो विकल्प 'किसी बदलाव की आवश्यकता नहीं है' का चयन करें।

उसका भाई सेक्रेटरी लगा हुआ है।

- Ans
- 1. सेक्रेटरी लगता है
 - 2. किसी बदलाव की आवश्यकता नहीं है।
 - 3. सेक्रेटरी लगा है
 - 4. सेक्रेटरी है

Question ID : 65497832515

Status : Not Answered

Chosen Option : --

Q.18 दिए गए वाक्य में रेखांकित खंड को प्रतिस्थापित करने के लिए सबसे उपयुक्त विकल्प का चयन करें। यदि इसे प्रतिस्थापित करने की आवश्यकता नहीं है, तो विकल्प 'किसी बदलाव की आवश्यकता नहीं है' का चयन करें।

शाम बेटे को पत्र लिखा।

- Ans
- 1. शाम से
 - 2. शाम को
 - 3. शाम ने
 - 4. किसी बदलाव की आवश्यकता नहीं है

Question ID : 65497832508

Status : Not Answered

Chosen Option : --

Q.19 निम्नलिखित प्रश्न में, दिए गए चार विकल्पों में से उस विकल्प का चयन करें, जो मुहावरे का अर्थ व्यक्त करता है।

उल्टी गंगा बहना

- Ans
- 1. अनुकूल कार्य
 - 2. प्रतिकूल कार्य
 - 3. गंगा उलटा बहती हुई दूसरी नदी से मिल जाना
 - 4. गंगा उलटा बह जाना

Question ID : 65497832510

Status : Not Answered

Chosen Option : --

Q.20 दिये गये वाक्य के किस भाग में त्रुटि है?

प्रायः सभी लोग इस बात को नहीं समझते हैं।

- Ans
- 1. इस बात
 - 2. को नहीं
 - 3. समझते हैं।
 - 4. प्रायः सभी लोग

Question ID : 65497832521

Status : Not Answered

Chosen Option : --

Comprehension:

सांस्कृतिक गुलामी का सबसे भयानक रूप वह होता है, जब कोई जाति अपनी भाषा को छोड़कर दूसरों की (1)_____ को अपना लेती है और उसी में तुतलाने को अपना परम (2)_____ मानने लगती है। यह (3)_____ की पराकाष्ठा है, क्योंकि जो जाति अपनी भाषा में नहीं सोचती, अपनी भाषा में अपना साहित्य नहीं लिखती, अपनी भाषा में अपना दैनिक कार्य (4)_____ नहीं करती, वह अपनी परंपरा से छूट जाती है, अपने (5)_____ को खो बैठती है और उसके स्वाभिमान का प्रचंड विनाश हो जाता है।

निम्न प्रश्नों के उत्तर उपरोक्त गद्यांश के आधार पर दीजिए।

SubQuestion No : 21

Q.21 गद्यांश के रिक्त स्थान (1) के लिए सर्वाधिक उपयुक्त शब्द होगा-

- Ans 1. भाषा
 2. रचना
 3. शैली
 4. कला

Question ID : 65497832525

Status : Not Answered

Chosen Option : --

Comprehension:

सांस्कृतिक गुलामी का सबसे भयानक रूप वह होता है, जब कोई जाति अपनी भाषा को छोड़कर दूसरों की (1)_____ को अपना लेती है और उसी में तुतलाने को अपना परम (2)_____ मानने लगती है। यह (3)_____ की पराकाष्ठा है, क्योंकि जो जाति अपनी भाषा में नहीं सोचती, अपनी भाषा में अपना साहित्य नहीं लिखती, अपनी भाषा में अपना दैनिक कार्य (4)_____ नहीं करती, वह अपनी परंपरा से छूट जाती है, अपने (5)_____ को खो बैठती है और उसके स्वाभिमान का प्रचंड विनाश हो जाता है।

निम्न प्रश्नों के उत्तर उपरोक्त गद्यांश के आधार पर दीजिए।

SubQuestion No : 22

Q.22 गद्यांश के रिक्त स्थान (2) के लिए सर्वाधिक उपयुक्त शब्द होगा-

- Ans 1. स्वार्थ
 2. गौरव
 3. घमंड
 4. अभिमान

Question ID : 65497832526

Status : Not Answered

Chosen Option : --

Comprehension:

सांस्कृतिक गुलामी का सबसे भयानक रूप वह होता है, जब कोई जाति अपनी भाषा को छोड़कर दूसरों की (1)_____ को अपना लेती है और उसी में तुतलाने को अपना परम (2)_____ मानने लगती है। यह (3)_____ की पराकाष्ठा है, क्योंकि जो जाति अपनी भाषा में नहीं सोचती, अपनी भाषा में अपना साहित्य नहीं लिखती, अपनी भाषा में अपना दैनिक कार्य (4)_____ नहीं करती, वह अपनी परंपरा से छूट जाती है, अपने (5)_____ को खो बैठती है और उसके स्वाभिमान का प्रचंड विनाश हो जाता है।

निम्न प्रश्नों के उत्तर उपरोक्त गद्यांश के आधार पर दीजिए।

SubQuestion No : 23

Q.23 गद्यांश के रिक्त स्थान (3) के लिए सर्वाधिक उपयुक्त शब्द होगा-

- Ans 1. गुलामी
 2. प्रगति
 3. आजादी
 4. स्वाधीनता

Question ID : 65497832527

Status : Not Answered

Chosen Option : --

Comprehension:

सांस्कृतिक गुलामी का सबसे भयानक रूप वह होता है, जब कोई जाति अपनी भाषा को छोड़कर दूसरों की (1)_____ को अपना लेती है और उसी में तुतलाने को अपना परम (2)_____ मानने लगती है। यह (3)_____ की पराकाष्ठा है, क्योंकि जो जाति अपनी भाषा में नहीं सोचती, अपनी भाषा में अपना साहित्य नहीं लिखती, अपनी भाषा में अपना दैनिक कार्य (4)_____ नहीं करती, वह अपनी परंपरा से छूट जाती है, अपने (5)_____ को खो बैठती है और उसके स्वाभिमान का प्रचंड विनाश हो जाता है।

निम्न प्रश्नों के उत्तर उपरोक्त गद्यांश के आधार पर दीजिए।

SubQuestion No : 24

Q.24 गद्यांश के रिक्त स्थान (4) के लिए सर्वाधिक उपयुक्त शब्द होगा-

- Ans** 1. संपादित
 2. अभिव्यक्त
 3. स्पष्ट
 4. मूर्त

Question ID : 65497832528

Status : Not Answered

Chosen Option : --

Comprehension:

सांस्कृतिक गुलामी का सबसे भयानक रूप वह होता है, जब कोई जाति अपनी भाषा को छोड़कर दूसरों की (1)_____ को अपना लेती है और उसी में तुतलाने को अपना परम (2)_____ मानने लगती है। यह (3)_____ की पराकाष्ठा है, क्योंकि जो जाति अपनी भाषा में नहीं सोचती, अपनी भाषा में अपना साहित्य नहीं लिखती, अपनी भाषा में अपना दैनिक कार्य (4)_____ नहीं करती, वह अपनी परंपरा से छूट जाती है, अपने (5)_____ को खो बैठती है और उसके स्वाभिमान का प्रचंड विनाश हो जाता है।

निम्न प्रश्नों के उत्तर उपरोक्त गद्यांश के आधार पर दीजिए।

SubQuestion No : 25

Q.25 गद्यांश के रिक्त स्थान (5) के लिए सर्वाधिक उपयुक्त शब्द होगा-

- Ans** 1. सौन्दर्य
 2. सुख
 3. व्यक्तित्व
 4. विकास

Question ID : 65497832529

Status : Not Answered

Chosen Option : --

Exam Date	01/12/2021
Exam Time :	12:30 PM - 2:00 PM
Subject	Constable GD 2021

Section : Part A General Intelligence and Reasoning

Q.1 T has two sons namely N and L. S is the only son of his father. R and S are grandchildren of T. P is L's wife. M is the mother of S. How is N related to R?

- Ans 1. Uncle
 2. Father
 3. Son
 4. Nephew

Question ID : 65497834454
 Status : Answered
 Chosen Option : 1

Q.2 If 'P' denotes '+', 'Q' denotes '-', 'R' denotes 'x' and 'S' denotes '÷', then what will be the value of the following expression?

(14 R 9) S 6 P 40 Q 11

- Ans 1. 55
 2. 48
 3. 60
 4. 50

Question ID : 65497834449
 Status : Answered
 Chosen Option : 4

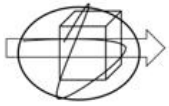
Q.3 Select the number from among the given options that can replace the question mark (?) in the following series.

11, 14, 26, 53, 101, ?

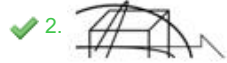
- Ans 1. 162
 2. 154
 3. 168
 4. 176

Question ID : 65497834445
 Status : Not Answered
 Chosen Option : --

Q.4 Select the option that is embedded in the given figure (rotation is NOT allowed).



Ans



Question ID : 65497834451

Status : Answered

Chosen Option : 2

Q.5 Select the number from among the given options that can replace the question mark (?) in the following series.

20, 22, 27, ?, 55, 78, 109

Ans

1. 38

2. 30

3. 32

4. 49

Question ID : 65497834437

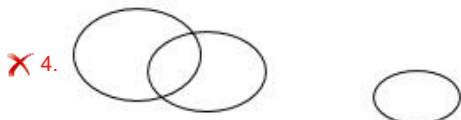
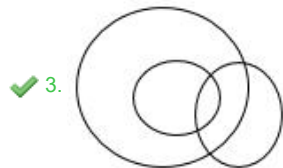
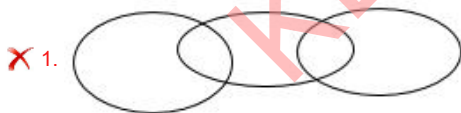
Status : Answered

Chosen Option : 1

Q.6 Select the Venn diagram that best illustrates the relationship between the following classes.

Teachers, Mothers, Females

Ans



Question ID : 65497834442

Status : Answered

Chosen Option : 3

Q.7 Read the given statements and conclusions carefully. Assuming that the information given in the statements is true, even if it appears to be at variance with commonly known facts, decide which of the given conclusions logically follow(s) from the statements.

Statements:

- I) All computers are desktops.
- II) Some computers are laptops.

Conclusions:

- I) Some laptops are desktops.
- II) All desktops are laptops.

- Ans**
- 1. Only conclusion II follows.
 - 2. Neither conclusion I nor II follows.
 - 3. Both conclusions I and II follow.
 - 4. Only conclusion I follows.

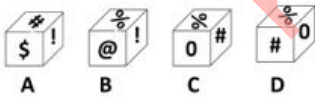
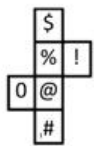
Question ID : 65497834456
 Status : Not Answered
 Chosen Option : --

Q.8 In a class, if 3 students are absent, then the rest of the students can be divided equally into 7 groups and if 7 students are absent, then the rest of the students can be divided equally into 9 groups. How many students are present in the class?

- Ans**
- 1. 115
 - 2. 140
 - 3. 87
 - 4. 101

Question ID : 65497834458
 Status : Answered
 Chosen Option : 1

Q.9 Select the dice that can be formed by folding the given sheet along the lines.



- Ans**
- 1. A, B, C and D
 - 2. Only A and B
 - 3. Only D
 - 4. Only C and D

Question ID : 65497834450
 Status : Answered
 Chosen Option : 2

Q.10 All six friends are sitting in a row and facing north, H is sitting between D and G whereas B is sitting between L and A. A and D is sitting at extreme ends. Who is sitting between G and B?

- Ans 1. L
 2. A
 3. H
 4. D

Question ID : 65497834441
Status : Answered
Chosen Option : 1

Q.11 Four letter-clusters have been given, out of which three are alike in some manner and one is different. Select the letter-cluster that is different.

- Ans 1. KOSWA
 2. EIMQU
 3. NRUZE
 4. AEIMQ

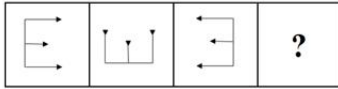
Question ID : 65497834435
Status : Answered
Chosen Option : 3

Q.12 In a certain code language, 'SUPERWASH' is written as 'UWRGTYCUJ'. How will 'ANTISEPTIC' be written in that language?

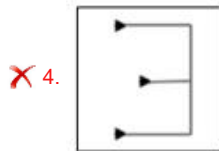
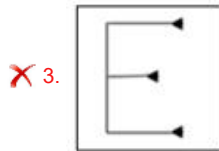
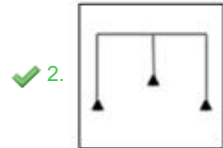
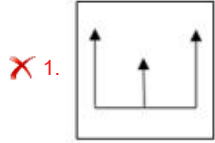
- Ans 1. CPUKVGRVKE
 2. CPVKUGRVKE
 3. CPVKUGRRVE
 4. CPKVUGRVKE

Question ID : 65497834455
Status : Answered
Chosen Option : 2

Q.13 Select the figure from among the given options that can replace the question mark (?) in the following series.



Ans

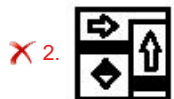


Question ID : 65497834446
 Status : Answered
 Chosen Option : 2

Q.14 Select the correct mirror image of the given figure when the mirror is placed at the right side.



Ans



Question ID : 65497834438
 Status : Answered
 Chosen Option : 1

Q.15 Seven people, Gaurav, Manish, Rahul, Anish, Meeta, Priya, and Preeti, are sitting in a circle. Gaurav is the neighbour of Manish and Rahul. Anish is not the neighbour of Meeta and Rahul. Preeti is the neighbour of Meeta and Priya and sitting second to the left of Anish. What is the position of Rahul?

- Ans
- 1. Fourth to the right of Priya
 - 2. Second to the right of Anish
 - 3. Between Manish and Gaurav
 - 4. Immediate left to Preeti

Question ID : 65497834447
Status : Not Answered
Chosen Option : --

Q.16 Select the correct option that indicates the arrangement of the given words in the order in which they appear in an English dictionary.

- i. Facet
- ii. Facility
- iii. Facile
- iv. Fact
- v. Faculty

- Ans
- 1. i, iii, ii, iv, v
 - 2. iii, ii, v, i, iv
 - 3. v, iv, iii, ii, i
 - 4. i, ii, iii, iv, v

Question ID : 65497834443
Status : Answered
Chosen Option : 1

Q.17 'Up' is related to 'Down' in the same way as 'Cold' is related to '_____':

- Ans
- 1. Coffee
 - 2. Cool
 - 3. Winter
 - 4. Hot

Question ID : 65497834440
Status : Answered
Chosen Option : 4

Q.18 A paper sheet is folded in a particular manner and several punches are made. When unfolded, the paper sheet looks like the question figure. From the given options select the one that follows the manner in which the paper is folded and punched.

Question figure



Ans

- 1.
- 2.
- 3.
- 4.

Question ID : 65497834459

Status : Answered

Chosen Option : 4

Q.19 Select the letter-cluster from among the given options that can replace the question mark (?) in the following series.

ADF, BEG, CFH, ?

- Ans
- 1. FDI
 - 2. DGI
 - 3. DIF
 - 4. DFT

Question ID : 65497834439

Status : Answered

Chosen Option : 2

Q.20 Select the option in which the numbers are related in the same way as are the numbers in the given set.

(11, 13, 17)

- Ans
- 1. (61, 63, 65)
 - 2. (29, 31, 33)
 - 3. (41, 43, 53)
 - 4. (9, 25, 17)

Question ID : 65497834448

Status : Answered

Chosen Option : 3

Q.21 Select the option that is related to the third term in the same way as the second term is related to the first term.

GARDEN : EBPECO :: FLOWER : ?

- Ans 1. SFXPKE
 2. CJQYGT
 3. EMPVDS
 4. DMMXCS

Question ID : 65497834452
 Status : Answered
 Chosen Option : 4

Q.22 Study the given pattern carefully and select the number that can replace the question mark (?) in it.

11 9 7
 8 12 14
 440 540 ?

- Ans 1. 640
 2. 710
 3. 560
 4. 490

Question ID : 65497834457
 Status : Answered
 Chosen Option : 4

Q.23 Study the given pattern carefully and select the letter that can replace the question mark (?) in it.

C F I
 R O ?
 U X A

- Ans 1. U
 2. R
 3. L
 4. M

Question ID : 65497834444
 Status : Answered
 Chosen Option : 3

Q.24 In a certain code language, 'FRUSTRATION' is coded as '11' and 'TOPICAL' is coded as '7'. How will 'RESURGENCE' be coded in that language?

- Ans 1. 12
 2. 11
 3. 9
 4. 10

Question ID : 65497834436
 Status : Answered
 Chosen Option : 4

Q.25 In a certain code language, 'MASTER' is written as 'NBTUFS'. How will 'ENOUGH' be written in that language?

- Ans
- 1. VHIPOF
 - 2. FOPVHI
 - 3. VOHPFI
 - 4. OPHIFV

Question ID : 65497834453
Status : Answered
Chosen Option : 2

Section : Part B General Knowledge and General Awareness

Q.1 Which one of the following is a martial dance performed with swords in the state of Himachal Pradesh?

- Ans
- 1. Parasa
 - 2. Namagen
 - 3. Chhanak Chham
 - 4. Kharaiti

Question ID : 65497834472
Status : Not Answered
Chosen Option : --

Q.2 Which of the following is the first official language of Sri Lanka?

- Ans
- 1. Sinhala
 - 2. English
 - 3. Malayalam
 - 4. Tamil

Question ID : 65497834477
Status : Answered
Chosen Option : 1

Q.3 Who won the 'Hindu Prize 2019' for his/her 'India Empire and First World War Culture: Writings, Images and Songs' in the Non-fiction category?

- Ans
- 1. Santanu Das
 - 2. Meena Kandasamy
 - 3. Manoranjan Byapari
 - 4. Deepak Unnikrishnan

Question ID : 65497834475
Status : Not Answered
Chosen Option : --

Q.4 When is Chhattisgarh Formation Day observed?

- Ans
- 1. 30 May
 - 2. 15 June
 - 3. 23 October
 - 4. 1 November

Question ID : 65497834467
Status : Not Answered
Chosen Option : --

Q.5 Which of the following has been declared as one of the worst invasive species by the International Union for Conservation of Nature (IUCN)?

- Ans
- 1. Garden snail
 - 2. Giant African snail
 - 3. Channeled apple snail
 - 4. Chinese mystery snail

Question ID : 65497834480
Status : Not Answered
Chosen Option : --

Q.6 Lala Lajpat Rai was an active member of _____.

- Ans
- 1. Vaishnavism
 - 2. Arya Samaj
 - 3. Buddhism
 - 4. Jainism

Question ID : 65497834484
Status : Answered
Chosen Option : 2

Q.7 Which of the following compounds is also called 'Norwegian saltpeter'?

- Ans
- 1. Nitrous oxide
 - 2. Calcium nitrate
 - 3. Sodium nitrate
 - 4. Potassium nitrate

Question ID : 65497834469
Status : Not Answered
Chosen Option : --

Q.8 Who among the following assumed charge as one of the Election Commissioners of India on 1 September 2020?

- Ans
- 1. Rajiv Kumar
 - 2. KN Vyas
 - 3. IV Subba Rao
 - 4. Samant Goel

Question ID : 65497834462
Status : Not Answered
Chosen Option : --

Q.9 As of November 2020, who among the following was the Director-General of Sports Authority of India (SAI)?

- Ans
- 1. Anjan Kumar Mishra
 - 2. Matadin Asiwaj
 - 3. Rohit Bhardwaj
 - 4. Sandip Pradhan

Question ID : 65497834463
Status : Not Answered
Chosen Option : --

Q.10 Rearing and maintenance of honey-bees and hives for honey is called _____.

- Ans 1. sericulture
 2. apiculture
 3. pisciculture
 4. floriculture

Question ID : 65497834466
Status : Answered
Chosen Option : 2

Q.11 What was India's rank in the Ease of Doing Business Index 2020?

- Ans 1. 54
 2. 63
 3. 67
 4. 71

Question ID : 65497834464
Status : Not Answered
Chosen Option : --

Q.12 2018 Men's Hockey World Cup was hosted by _____.

- Ans 1. Malaysia
 2. Spain
 3. Australia
 4. India

Question ID : 65497834465
Status : Not Answered
Chosen Option : --

Q.13 All the fundamental rights guaranteed under Section 19 are automatically suspended under which Article of the Constitution of India?

- Ans 1. Article 353
 2. Article 354
 3. Article 351
 4. Article 352

Question ID : 65497834479
Status : Not Answered
Chosen Option : --

Q.14 A small village named Plassey known for the 'Battle of Plassey' which was fought between East India company and Nawab Siraj-ud-Daulah is located on the banks of which river?

- Ans 1. Bhagirathi
 2. Padma
 3. Hooghly
 4. Barakar

Question ID : 65497834478
Status : Not Answered
Chosen Option : --

Q.15 Generally, the warm ocean currents originate near the _____ and move towards the poles.

- Ans
- 1. Arctic circle
 - 2. Equator
 - 3. Tropic of Cancer
 - 4. Antarctic circle

Question ID : 65497834481
Status : Not Answered
Chosen Option : --

Q.16 In which month is the 'Surajkund Craft Mela' held every year in Haryana?

- Ans
- 1. March
 - 2. August
 - 3. April
 - 4. February

Question ID : 65497834460
Status : Not Answered
Chosen Option : --

Q.17 How many Indian states share their border with Sikkim?

- Ans
- 1. One
 - 2. Two
 - 3. Four
 - 4. Three

Question ID : 65497834461
Status : Not Answered
Chosen Option : --

Q.18 Amul is a success story of cooperatives in milk and milk products from _____, which brought in the White Revolution in the country.

- Ans
- 1. Delhi
 - 2. Karnataka
 - 3. Uttar Pradesh
 - 4. Gujarat

Question ID : 65497834483
Status : Answered
Chosen Option : 4

Q.19 The official mascot for the last Commonwealth Games held in Gold Coast in 2018, was:

- Ans
- 1. Borobi, a blue surfing koala
 - 2. Goldie, a kiwi bird
 - 3. Karak, a red-tailed black cockatoo
 - 4. Clyde, a thistle

Question ID : 65497834482
Status : Not Answered
Chosen Option : --

Q.20 Which of the following is NOT a medium for a mechanical wave, that is sound, to travel?

- Ans
- 1. Air
 - 2. Water
 - 3. Steel
 - 4. Vacuum

Question ID : 65497834473
Status : Answered
Chosen Option : 4

Q.21 Lactometers, hydrometers, ships and submarines are designed on _____.

- Ans
- 1. the principle of gravitation
 - 2. the principle of relative density
 - 3. Archimedes' principle
 - 4. the principle of buoyancy

Question ID : 65497834474
Status : Not Answered
Chosen Option : --

Q.22 What was the infant mortality rate in India in 2019?

- Ans
- 1. 29.7
 - 2. 33.1
 - 3. 28.3
 - 4. 32.0

Question ID : 65497834476
Status : Not Answered
Chosen Option : --

Q.23 Dara Shikoh finally lost the war of succession to _____ in the battle of Samugarh.

- Ans
- 1. Bairam Khan
 - 2. Sher Shah
 - 3. Aurangzeb
 - 4. Muhammad Azam

Question ID : 65497834470
Status : Answered
Chosen Option : 3

Q.24 The foundation day of Uttarakhand is celebrated on:

- Ans
- 1. 30 September
 - 2. 9 November
 - 3. 15 August
 - 4. 20 October

Question ID : 65497834471
Status : Not Answered
Chosen Option : --

Q.25 Who among the following chaired the 147th session of WHO Executive Board through video conference in November 2020?

- Ans**
- 1. Amit Shah
 - 2. Narendra Modi
 - 3. Ajay Kumar
 - 4. Dr Harsh Vardhan

Question ID : 65497834468
Status : Not Answered
Chosen Option : --

Section : Part C Elementary Mathematics

Q.1 A machine depreciates by 10% per year. The present worth of the machine is ₹2,50,000. After 2 years the value of the machine will be:

- Ans**
- 1. ₹2,05,000
 - 2. ₹2,02,500
 - 3. ₹1,98,000
 - 4. ₹2,10,000

Question ID : 65497834500
Status : Answered
Chosen Option : 2

Q.2 An item was sold at a certain price. By selling it at four-fifths of that price one loses 16%. Find the percentage gain at original price.

- Ans**
- 1. 4%
 - 2. 5%
 - 3. 8%
 - 4. 7%

Question ID : 65497834509
Status : Answered
Chosen Option : 2

Q.3 Selvaraj paid ₹38,00,000 as a one-time payment for purchasing a flat. Before the hand-over of the flat key, he had to pay 5% to make the full payment. What was the additional amount to be paid?

- Ans**
- 1. ₹2,40,000
 - 2. ₹2,50,000
 - 3. ₹3,00,000
 - 4. ₹2,00,000

Question ID : 65497834492
Status : Not Answered
Chosen Option : --

Q.4 The product of two numbers is 19440 and their HCF is 18. The possible number of pairs of such numbers is:

- Ans**
- 1. 4
 - 2. 2
 - 3. 1
 - 4. 3

Question ID : 65497834497
Status : Answered
Chosen Option : 1

Q.5 In a school, the total students (boys and girls only) are 720. Boys and girls are in the ratio 7 : 5. In another school, there are 560 students (boys and girls only) and the ratio of boys and girls is 3 : 5. The ratio of boys and girls in the total strength of the two schools is:

- Ans**
- 1. 65 : 63
 - 2. 60 : 63
 - 3. 63 : 65
 - 4. 65 : 60

Question ID : 65497834503
Status : Answered
Chosen Option : 3

Q.6 5 men and 3 women can earn ₹8,400 in 4 days. 9 men and 7 women can earn ₹28,700 in 7 days. In how many days will 8 men and 5 women earn ₹30,600?

- Ans**
- 1. 12 days
 - 2. 9 days
 - 3. 8 days
 - 4. 13 days

Question ID : 65497834493
Status : Answered
Chosen Option : 2

Q.7 A cuboidal metal plate of 1 cm thickness, 9 cm breadth and 81 cm length is melted to form a cube. The total surface area of the cube is:

- Ans**
- 1. 729 cm²
 - 2. 286 cm²
 - 3. 486 cm²
 - 4. 300 cm²

Question ID : 65497834506
Status : Answered
Chosen Option : 3

Q.8 While covering a distance of 24 km, a man noticed that after walking for 1 h 20 min, the distance covered by him was $\frac{7}{11}$ of the remaining distance. What was his speed?

- Ans**
- 1. 6 km/h
 - 2. 8 km/h
 - 3. 7 km/h
 - 4. 9 km/h

Question ID : 65497834494
Status : Not Answered
Chosen Option : --

Q.9 A manufacturer sells an item to a wholesaler and makes a profit of 10%. The wholesaler sells the same item to a retailer at a profit of 12%. The retailer sells the same item to a customer at a profit of 15%. If the customer paid ₹21,252 for the item, then what was the cost price (in ₹) of the item for the manufacturer?

- Ans**
- 1. 18,000
 - 2. 15,000
 - 3. 12,500
 - 4. 17,500

Question ID : 65497834486
Status : Answered
Chosen Option : 2

Q.10 The average age of a company A of 5 members is 44.8 years and the average age of another company B of 4 members is 48 years. By what percentage is the total age of company B less than the total age of company A?

- Ans**
- 1. $\frac{25}{3}\%$
 - 2. $\frac{31}{3}\%$
 - 3. $\frac{25}{2}\%$
 - 4. $\frac{100}{7}\%$

Question ID : 65497834498
Status : Answered
Chosen Option : 4

Q.11 A, B and C individually can complete a work in 12, 10 and 15 days, respectively. All three work together and after 3 days, B and C leave the work. The remaining work will be completed by A in:

- Ans**
- 1. 6 days
 - 2. 5 days
 - 3. 3 days
 - 4. 4 days

Question ID : 65497834505
Status : Answered
Chosen Option : 3

Q.12 Two positive numbers are in the ratio 5 : 8. If the sum of their squares is 356, then the sum of the two numbers is:

- Ans**
- 1. 32
 - 2. 25
 - 3. 26
 - 4. 36

Question ID : 65497834488

Status : Answered

Chosen Option : 3

Q.13 The average of six positive numbers is 12.5. If the first number is two-thirds of the sum of the last five numbers, then the average of the last five numbers is:

- Ans**
- 1. 12
 - 2. 9
 - 3. 8
 - 4. 15

Question ID : 65497834490

Status : Answered

Chosen Option : 2

Q.14 A man completes a journey in 12 h. He travels the first half of the journey at a speed of 21 km/h and the second half at a speed of 24 km/h. Find the total distance of the journey (in km).

- Ans**
- 1. 264
 - 2. 260
 - 3. 168.8
 - 4. 268.8

Question ID : 65497834496

Status : Not Answered

Chosen Option : --

Q.15 At the start of a session, the number of students in grades 6, 7 and 8 in a school was 120, 150 and 130 respectively. Later on 10 students were admitted in grades 6 and 7 and 10 students were transferred from grade 8. The ratio of the number of students at the start and those at the end of the session, provided no further admission or withdrawal/transfer had taken place, was:

- Ans**
- 1. 20 : 21
 - 2. 40 : 41
 - 3. 3 : 5
 - 4. 13 : 42

Question ID : 65497834499

Status : Answered

Chosen Option : 1

Q.16 A certain sum amounts to ₹8,571.50 in $4\frac{1}{2}$ years at 8.5% p.a. at simple interest. The simple interest on the same sum will be ₹x in $6\frac{2}{3}$ years at $10\frac{1}{2}$ % p.a. What is the value of x?

- Ans**
- ✓ 1. 4,340
 - ✗ 2. 3,980
 - ✗ 3. 4,130
 - ✗ 4. 4,520

Question ID : 65497834487
Status : Answered
Chosen Option : 1

Q.17 A shopkeeper sold 100 pencils at ₹24 for 10 pencils. To earn a profit of 20%, the cost price of one pencil is:

- Ans**
- ✗ 1. ₹2.20
 - ✗ 2. ₹1.80
 - ✗ 3. ₹2.10
 - ✓ 4. ₹2.00

Question ID : 65497834502
Status : Answered
Chosen Option : 4

Q.18 The expression $0.2 \times 2 + \frac{1}{2} \div 2 \times \frac{5}{2}$ of $2 - 1.5 + 3 \times \frac{1}{3} \div \frac{2}{3} - \frac{2}{5}$ on simplification will give the result as:

- Ans**
- ✓ 1. $\frac{1}{8}$
 - ✗ 2. $\frac{1}{4}$
 - ✗ 3. $\frac{1}{3}$
 - ✗ 4. $\frac{2}{5}$

Question ID : 65497834501
Status : Not Answered
Chosen Option : --

Q.19 The value of $[12 \div (2 \times 3)] \div [24 \div (8 - 5)]$ is:

- Ans**
- ✓ 1. $\frac{1}{4}$
 - ✗ 2. $\frac{7}{8}$
 - ✗ 3. $\frac{2}{3}$
 - ✗ 4. $\frac{3}{6}$

Question ID : 65497834495
Status : Answered
Chosen Option : 1

Q.20 If X% of Y is 100 and Y% of Z is 400, then find the ratio between X and Z.

- Ans
- 1. 4 : 1
 - 2. 1 : 4
 - 3. 2 : 3
 - 4. 1 : 3

Question ID : 65497834508
Status : Answered
Chosen Option : 2

Q.21 The ratio of two numbers is 3 : 5 and their HCF is 6. Find their LCM.

- Ans
- 1. 30
 - 2. 90
 - 3. 80
 - 4. 60

Question ID : 65497834507
Status : Answered
Chosen Option : 2

Q.22 A certain sum becomes double in 2 years at a certain rate per annum compound interest. The number of years it will become 4 times at the same compound interest rate is:

- Ans
- 1. 5
 - 2. 4
 - 3. 6
 - 4. 3

Question ID : 65497834504
Status : Answered
Chosen Option : 2

Q.23 The marked price of an article is ₹850. If a shopkeeper sold the article at 15% loss after giving 30% discount, then the cost price of the article is:

- Ans
- 1. ₹680
 - 2. ₹700
 - 3. ₹600
 - 4. ₹650

Question ID : 65497834491
Status : Not Answered
Chosen Option : --

Q.24 A store announces two successive discounts of 30% and 25%. What is the final sale price (in ₹) of a shirt costing ₹1,200?

- Ans
- 1. 780
 - 2. 630
 - 3. 720
 - 4. 600

Question ID : 65497834485
Status : Not Answered
Chosen Option : --

Q.25 The length and breadth of a rectangular field are in the ratio 4 : 3. If the cost of cultivating the field at ₹2 per m² is ₹600, then the length of the field is:

- Ans
- 1. 18 m
 - 2. 20 m
 - 3. 15 m
 - 4. 14 m

Question ID : 65497834489
Status : Not Answered
Chosen Option : --

Section : Part D English

Q.1 Select the option that can be used as a one-word substitute for the given group of words.

A partner in crime

- Ans
- 1. Companion
 - 2. Follower
 - 3. Opponent
 - 4. Accomplice

Question ID : 65497834528
Status : Answered
Chosen Option : 1

Q.2 Select the INCORRECTLY spelt word.

- Ans
- 1. Orchard
 - 2. Archary
 - 3. Anarchy
 - 4. Monarch

Question ID : 65497834520
Status : Not Answered
Chosen Option : --

Q.3 Select the most appropriate synonym of the given word.

Weary

- Ans
- 1. Fresh
 - 2. Happy
 - 3. Tired
 - 4. Upset

Question ID : 65497834515
Status : Not Answered
Chosen Option : --

Q.4 Select the most appropriate synonym of the given word.

Rambling

- Ans 1. Articulate
 2. Boring
 3. Elaborate
 4. Long-Winded

Question ID : 65497834527
Status : Not Answered
Chosen Option : --

Q.5 The following sentence has been split into four segments. Identify the segment that contains a grammatical error.

John wanted to know / if will John / come to the college / in the evening.

- Ans 1. come to the college
 2. if will John
 3. in the evening
 4. John wanted to know

Question ID : 65497834526
Status : Answered
Chosen Option : 2

Q.6 The following sentence has been split into four segments. Identify the segment that contains a grammatical error.

Owing for / his illness, / he couldn't achieve / his goals.

- Ans 1. his goals
 2. his illness
 3. Owing for
 4. he couldn't achieve

Question ID : 65497834517
Status : Not Answered
Chosen Option : --

Q.7 Select the most appropriate meaning of the given idiom.

Flea market

- Ans 1. A place where fish and marine animals are sold
 2. A place where stolen goods are sold
 3. A place where antiques and second-hand goods are sold
 4. A place where vegetables and fruits are sold

Question ID : 65497834511
Status : Answered
Chosen Option : 1

Q.8 Select the option that is closest in meaning to the underlined idiom/phrase in the given sentence.

I will always be grateful to my friend because she has been with me through thick and thin.

- Ans
- 1. in both, good times and bad times
 - 2. in your own place and other places
 - 3. over a long period of time
 - 4. during different stages of life

Question ID : 65497834525
Status : Answered
Chosen Option : 1

Q.9 Select the most appropriate option to fill in the blank.

She is so _____ of plants that she can spend her entire day in a garden.

- Ans
- 1. attached
 - 2. loving
 - 3. interested
 - 4. fond

Question ID : 65497834510
Status : Answered
Chosen Option : 4

Q.10 The following sentence has been divided into parts. One of them contains an error. Select the part that contains the error from the given options.

He had / prepare well / before the examination / so he did well.

- Ans
- 1. so he did well
 - 2. He had
 - 3. before the examination
 - 4. prepare well

Question ID : 65497834514
Status : Answered
Chosen Option : 4

Q.11 Select the INCORRECTLY spelt word.

- Ans
- 1. Metallurgy
 - 2. Observatry
 - 3. Prologue
 - 4. Adolescence

Question ID : 65497834521
Status : Answered
Chosen Option : 2

Q.12 Select the most appropriate option that can substitute the underlined segment in the given sentence. If there is no need to substitute it, select 'No substitution required'.

There have been heavy rains in the city even then hurricane made landfall.

- Ans
- 1. from the hurricane making landfall
 - 2. since the hurricane made landfall
 - 3. then the hurricane is made landfall
 - 4. No substitution required

Question ID : 65497834513
Status : Answered
Chosen Option : 2

Q.13 Select the most appropriate ANTONYM of the given word.

Appoint

- Ans
- 1. Dismiss
 - 2. Assign
 - 3. Choose
 - 4. Select

Question ID : 65497834516
Status : Answered
Chosen Option : 1

Q.14 Select the most appropriate ANTONYM of the given word.

Stable

- Ans
- 1. Secure
 - 2. Steady
 - 3. Fixed
 - 4. Shaky

Question ID : 65497834518
Status : Answered
Chosen Option : 4

Q.15 Select the most appropriate option that can substitute the underlined segment in the given sentence. If there is no need to substitute it, select 'No substitution required'.

I must replying this letter immediately.

- Ans
- 1. No substitution required
 - 2. reply for this letter
 - 3. reply this letter
 - 4. reply to this letter

Question ID : 65497834524
Status : Answered
Chosen Option : 4

Q.16 Select the option that can be used as a one-word substitute for the given group of words.

Fluid secreted by flowers which is collected by bees for making honey

- Ans 1. Euphoria
 2. Nectar
 3. Ambrosia
 4. Juice

Question ID : 65497834512
Status : Answered
Chosen Option : 2

Q.17 Select the most appropriate option that can substitute the underlined segment in the given sentence. If there is no need to substitute it, select 'No substitution required'.

She told him don't touch her bag.

- Ans 1. don't be touching
 2. not to touch
 3. No substitution required
 4. to not touched

Question ID : 65497834523
Status : Answered
Chosen Option : 2

Q.18 Select the most appropriate option to fill in the blank.

Customers _____ money for the damaged products.

- Ans 1. ask
 2. allow
 3. claim
 4. grant

Question ID : 65497834522
Status : Answered
Chosen Option : 3

Q.19 Select the most appropriate option to fill in the blank.

The heavy rain affected _____ so much that we could not proceed further.

- Ans 1. scene
 2. distance
 3. visibility
 4. outlook

Question ID : 65497834529
Status : Answered
Chosen Option : 3

Q.20 Select the option that can be used as a one-word substitute for the given group of words.

Move faster

- Ans** 1. Accelerate
 2. Exhilarate
 3. Abnegate
 4. Abdicate

Question ID : 65497834519

Status : Answered

Chosen Option : 1

Comprehension:

In the following passage, some words have been deleted. Read the passage carefully and select the most appropriate option to fill in each blank.

A job or academic interview is a (1)_____ meeting at which people are asked questions by one or a (2)_____ of interviewers to find out if they are suitable for a job. Sometimes, interviews for jobs are walk-in, which means that the candidate, (3)_____ instructions in an (4)_____, goes directly with all related (5)_____ such as CV, certificates and testimonials to a place where an interview is conducted.

SubQuestion No : 21

Q.21 Select the most appropriate option to fill in blank no. 1.

- Ans** 1. formal
 2. public
 3. lethal
 4. decided

Question ID : 65497834531

Status : Answered

Chosen Option : 1

Comprehension:

In the following passage, some words have been deleted. Read the passage carefully and select the most appropriate option to fill in each blank.

A job or academic interview is a (1)_____ meeting at which people are asked questions by one or a (2)_____ of interviewers to find out if they are suitable for a job. Sometimes, interviews for jobs are walk-in, which means that the candidate, (3)_____ instructions in an (4)_____, goes directly with all related (5)_____ such as CV, certificates and testimonials to a place where an interview is conducted.

SubQuestion No : 22

Q.22 Select the most appropriate option to fill in blank no. 2.

- Ans** 1. band
 2. bunch
 3. company
 4. panel

Question ID : 65497834532

Status : Answered

Chosen Option : 4

Comprehension:

In the following passage, some words have been deleted. Read the passage carefully and select the most appropriate option to fill in each blank.

A job or academic interview is a (1)_____ meeting at which people are asked questions by one or a (2)_____ of interviewers to find out if they are suitable for a job. Sometimes, interviews for jobs are walk-in, which means that the candidate, (3)_____ instructions in an (4)_____, goes directly with all related (5)_____ such as CV, certificates and testimonials to a place where an interview is conducted.

SubQuestion No : 23

Q.23 Select the most appropriate option to fill in blank no. 3.

- Ans 1. preparing
 2. enacting
 3. devoting
 4. following

Question ID : 65497834533

Status : Answered

Chosen Option : 4

Comprehension:

In the following passage, some words have been deleted. Read the passage carefully and select the most appropriate option to fill in each blank.

A job or academic interview is a (1)_____ meeting at which people are asked questions by one or a (2)_____ of interviewers to find out if they are suitable for a job. Sometimes, interviews for jobs are walk-in, which means that the candidate, (3)_____ instructions in an (4)_____, goes directly with all related (5)_____ such as CV, certificates and testimonials to a place where an interview is conducted.

SubQuestion No : 24

Q.24 Select the most appropriate option to fill in blank no. 4.

- Ans 1. observation
 2. instance
 3. establishment
 4. advertisement

Question ID : 65497834534

Status : Answered

Chosen Option : 4

Comprehension:

In the following passage, some words have been deleted. Read the passage carefully and select the most appropriate option to fill in each blank.

A job or academic interview is a (1)_____ meeting at which people are asked questions by one or a (2)_____ of interviewers to find out if they are suitable for a job. Sometimes, interviews for jobs are walk-in, which means that the candidate, (3)_____ instructions in an (4)_____, goes directly with all related (5)_____ such as CV, certificates and testimonials to a place where an interview is conducted.

SubQuestion No : 25

Q.25 Select the most appropriate option to fill in blank no. 5.

- Ans 1. documents
 2. material
 3. stuff
 4. personnel

Question ID : 65497834535

Status : Answered

Chosen Option : 1

Q.1 दिये गये वाक्यांश के लिए एक शब्द दीजिये।

जो कलहप्रिय हो

- Ans
- 1. क्लेश
 - 2. कलेसी
 - 3. झगड़ालू
 - 4. झगड़ोल

Question ID : 65497834541
Status : Not Answered
Chosen Option : --

Q.2 निम्नलिखित प्रश्न में, दिए गए चार विकल्पों में से उस विकल्प का चयन करें, जो मुहावरे का अर्थ व्यक्त करता है।

नाकों चने चबवाना-

- Ans
- 1. तंग करना
 - 2. बदनाम करना
 - 3. दंग रह जाना
 - 4. गुस्सा हो जाना

Question ID : 65497834549
Status : Not Answered
Chosen Option : --

Q.3 रिक्त स्थान को भरने के लिए सबसे उपयुक्त शब्द का चयन करें।

साहित्य और जीवन का _____ संबंध है।

- Ans
- 1. अभिन्न
 - 2. पृथक
 - 3. घोर
 - 4. घनघोर

Question ID : 65497834550
Status : Not Answered
Chosen Option : --

Q.4 दिए गए शब्द का विलोम चुनें।

आचार

- Ans
- 1. विचार
 - 2. व्यवहार
 - 3. प्रचार
 - 4. अनाचार

Question ID : 65497834548
Status : Not Answered
Chosen Option : --

Q.5 दिए गए वाक्यांश के लिए एक शब्द चुनिए।

जो किसी का पक्ष न ले

- Ans
- 1. विपक्ष
 - 2. तटीय
 - 3. तटस्थ
 - 4. निपक्ष

Question ID : 65497834551
Status : Not Answered
Chosen Option : --

Q.6 निम्नलिखित प्रश्न में, दिए गए चार विकल्पों में से, उस विकल्प का चयन करें जो मुहावरे का अर्थ व्यक्त करता है।

ईद का चांद होना

- Ans
- 1. बहुत सुंदर होना
 - 2. आकर्षक होना
 - 3. बहुत समय बाद दिखायी देना
 - 4. दुर्लभ होना

Question ID : 65497834544
Status : Not Answered
Chosen Option : --

Q.7 दिए गए वाक्य में रेखांकित खंड को प्रतिस्थापित करने के लिए सबसे उपयुक्त विकल्प का चयन करें। यदि इसे प्रतिस्थापित करने की आवश्यकता नहीं है, तो विकल्प 'किसी बदलाव की आवश्यकता नहीं है' का चयन करें।

किसी भी देश की सम्पत्ति, ऐसे देश में आदर्श विद्यार्थी ही होते हैं।

- Ans
- 1. उस देश के आदर्श विद्यार्थी
 - 2. ऐसे देश के आदर्श विद्यार्थी
 - 3. किसी बदलाव की आवश्यकता नहीं है।
 - 4. उस देश में आदर्श विद्यार्थी

Question ID : 65497834542
Status : Not Answered
Chosen Option : --

Q.8 दिये गये वाक्य के किस भाग में त्रुटि है?

उनकी आपस में घनिष्ठ मैत्रता थी।

- Ans
- 1. घनिष्ठ
 - 2. मैत्रता थी।
 - 3. आपस में
 - 4. उनकी

Question ID : 65497834554
Status : Not Answered
Chosen Option : --

Q.9 निम्नलिखित प्रश्न में, दिए गए चार विकल्पों में से उस विकल्प का चयन करें, जो मुहावरे का अर्थ व्यक्त करता है।

तीन-तेरह करना

- Ans
- 1. मृत्यु को प्राप्त होना
 - 2. इधर-उधर करना
 - 3. चुपचाप भाग जाना
 - 4. खुशामद करना

Question ID : 65497834537

Status : Not Answered

Chosen Option : --

Q.10 दिए गए वाक्य का वो भाग ज्ञात करें जिसमें कोई त्रुटि है। यदि कोई त्रुटि नहीं है, तो 'कोई त्रुटि नहीं है' चुनें।

प्रतिभा की माँ (1)\ इस समय छोटे बच्चा को (2)\ कहानी सुना रही है (3)\ कोई त्रुटि नहीं है (4)

- Ans
- 1. 4
 - 2. 1
 - 3. 2
 - 4. 3

Question ID : 65497834539

Status : Not Answered

Chosen Option : --

Q.11 दिये गये वाक्य में रेखांकित अंश को प्रतिस्थापित करने के लिए सबसे उपयुक्त विकल्प का चयन करें।

हमारे गले में पराधीनता की बेड़ियाँ पड़ी थीं।

- Ans
- 1. भुजाओं में
 - 2. मस्तक में
 - 3. सीने में
 - 4. पैरों में

Question ID : 65497834553

Status : Not Answered

Chosen Option : --

Q.12 रिक्त स्थान भरने के लिए सबसे उपयुक्त शब्द का चयन करें।

मक्खियाँ _____ हैं।

- Ans
- 1. भिनभिनाती
 - 2. सनसनाती
 - 3. खनखनाती
 - 4. चटचटाती

Question ID : 65497834538

Status : Not Answered

Chosen Option : --

Q.13 दिए गए वाक्य का वह भाग ज्ञात करें जिसमें कोई त्रुटि है। यदि कोई त्रुटि नहीं है, तो 'कोई त्रुटि नहीं है' चुनें।

अध्यापक (1)/ हमसे एक लेख (2)/ लिखवाया। (3)/ कोई त्रुटि नहीं है (4)

- Ans
- 1. 3
 - 2. 1
 - 3. 4
 - 4. 2

Question ID : 65497834547
Status : Not Answered
Chosen Option : --

Q.14 दिए गए शब्द के समानार्थी शब्द का चयन करें।

द्वार

- Ans
- 1. कर्मठ
 - 2. कपाट
 - 3. कपट
 - 4. सपाट

Question ID : 65497834540
Status : Not Answered
Chosen Option : --

Q.15 सही वर्तनी वाले शब्द का चयन करें।

- Ans
- 1. सांसारिक
 - 2. संसारिक
 - 3. सांसरिक
 - 4. संसारक

Question ID : 65497834545
Status : Not Answered
Chosen Option : --

Q.16 दिए गए वाक्य में रेखांकित खंड को प्रतिस्थापित करने के लिए सबसे उपयुक्त विकल्प का चयन करें। यदि इसे प्रतिस्थापित करने की आवश्यकता नहीं है, तो विकल्प 'किसी बदलाव की आवश्यकता नहीं है' का चयन करें।

जंगल में मोर अथवा मोरनी दिखाई पड़ेगा।

- Ans
- 1. मोर अथवा मोरनी दिखाई गए।
 - 2. किसी बदलाव की आवश्यकता नहीं है।
 - 3. मोर अथवा मोरनी दिखाई देगा।
 - 4. मोर अथवा मोरनी दिखाई पड़ेगी।

Question ID : 65497834536
Status : Not Answered
Chosen Option : --

Q.17 दिए गए शब्द का विलोम चुनें।

आदर

- Ans 1. निरादर
 2. अनादर
 3. सादर
 4. अपमान

Question ID : 65497834543
 Status : Not Answered
 Chosen Option : --

Q.18 दिए गए शब्द के समानार्थी शब्द का चयन करें।

चंद्र

- Ans 1. पयोधर
 2. सुधाकर
 3. किकर
 4. दिवाकर

Question ID : 65497834555
 Status : Not Answered
 Chosen Option : --

Q.19 रिक्त स्थान को भरने के लिए सबसे उपयुक्त शब्द का चयन करें।

इस लड़की को वाद्य संगीत से _____ है।

- Ans 1. आकर्षण
 2. आसक्ति
 3. अनुराग
 4. स्नेह

Question ID : 65497834552
 Status : Not Answered
 Chosen Option : --

Q.20 सही वर्तनी वाले शब्द का चयन करें।

- Ans 1. प्रस्थिति
 2. पारिस्थिति
 3. परिस्थिति
 4. परिस्थित

Question ID : 65497834546
 Status : Not Answered
 Chosen Option : --

Comprehension:

दिए गए अनुच्छेद में कुछ शब्द हटा दिए गए हैं। दिए गए विकल्पों की सहायता से रिक्त स्थान भरें। प्रत्येक संख्या के लिए सबसे उपयुक्त विकल्प का चयन करें।

किसी भी देश की (1) _____ चेतना बोली जाने वाली भाषा के (2) _____ में (3) _____ होती है।
(4) _____ और साहित्य एक-दूसरे से (5) _____ हैं।

SubQuestion No : 21

Q.21 गद्यांश के रिक्त स्थान (1) के लिए सर्वाधिक उपयुक्त शब्द होगा-

- Ans 1. भावी
 2. सांस्कृतिक
 3. राजनीतिक
 4. सामाजिक

Question ID : 65497834557
 Status : Not Answered
 Chosen Option : --

Comprehension:

दिए गए अनुच्छेद में कुछ शब्द हटा दिए गए हैं। दिए गए विकल्पों की सहायता से रिक्त स्थान भरें। प्रत्येक संख्या के लिए सबसे उपयुक्त विकल्प का चयन करें।

किसी भी देश की (1) _____ चेतना बोली जाने वाली भाषा के (2) _____ में (3) _____ होती है।
(4) _____ और साहित्य एक-दूसरे से (5) _____ हैं।

SubQuestion No : 22

Q.22 गद्यांश के रिक्त स्थान (2) के लिए सर्वाधिक उपयुक्त शब्द होगा-

- Ans 1. पीछे
 2. साहित्य
 3. आगे
 4. पराक्रम

Question ID : 65497834558
 Status : Not Answered
 Chosen Option : --

Comprehension:

दिए गए अनुच्छेद में कुछ शब्द हटा दिए गए हैं। दिए गए विकल्पों की सहायता से रिक्त स्थान भरें। प्रत्येक संख्या के लिए सबसे उपयुक्त विकल्प का चयन करें।

किसी भी देश की (1) _____ चेतना बोली जाने वाली भाषा के (2) _____ में (3) _____ होती है।
(4) _____ और साहित्य एक-दूसरे से (5) _____ हैं।

SubQuestion No : 23

Q.23 गद्यांश के रिक्त स्थान (3) के लिए सर्वाधिक उपयुक्त शब्द होगा-

- Ans 1. दृष्टिहीन
 2. विध्वंसक
 3. ओझल
 4. परिलक्षित

Question ID : 65497834559
 Status : Not Answered
 Chosen Option : --

Comprehension:

दिए गए अनुच्छेद में कुछ शब्द हटा दिए गए हैं। दिए गए विकल्पों की सहायता से रिक्त स्थान भरें। प्रत्येक संख्या के लिए सबसे उपयुक्त विकल्प का चयन करें।

किसी भी देश की (1)_____ चेतना बोली जाने वाली भाषा के (2)_____ में (3)_____ होती है।
(4)_____ और साहित्य एक-दूसरे से (5)_____ हैं।

SubQuestion No : 24

Q.24 गद्यांश के रिक्त स्थान (4) के लिए सर्वाधिक उपयुक्त शब्द होगा-

- Ans** 1. संस्था
 2. समाज
 3. परिवार
 4. समुदाय

Question ID : **65497834560**
 Status : **Not Answered**
 Chosen Option : --

Comprehension:

दिए गए अनुच्छेद में कुछ शब्द हटा दिए गए हैं। दिए गए विकल्पों की सहायता से रिक्त स्थान भरें। प्रत्येक संख्या के लिए सबसे उपयुक्त विकल्प का चयन करें।

किसी भी देश की (1)_____ चेतना बोली जाने वाली भाषा के (2)_____ में (3)_____ होती है।
(4)_____ और साहित्य एक-दूसरे से (5)_____ हैं।

SubQuestion No : 25

Q.25 गद्यांश के रिक्त स्थान (5) के लिए सर्वाधिक उपयुक्त शब्द होगा-

- Ans** 1. पृथक
 2. अभिन्न
 3. भिन्न
 4. अलग

Question ID : **65497834561**
 Status : **Not Answered**
 Chosen Option : --

Constable GD in CAPFs NIA SSF and Rifleman GD in Assam Rifles Examination 2021

Roll Number	
Candidate Name	
Venue Name	iON Digital Zone iDZ 1 Hathipur
Exam Date	01/12/2021
Exam Time :	4:00 PM - 5:30 PM
Subject	Constable GD 2021

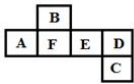
Section : Part A General Intelligence and Reasoning

Q.1 In a certain code language, 'CAMEL' is written as 'ECNGN' and 'HORSE' is written as 'JQSUG'. How will 'WHALE' be written in that language?

- Ans
- 1. XJBNF
 - 2. XIBMF
 - 3. YJBNG
 - 4. YJCNG

Question ID : 65497829990
Status : Answered
Chosen Option : 3

Q.2 A cube is made by folding the given sheet. In the cube so formed, which of the following pairs of letters will be on opposite sides?



- Ans
- 1. F and E
 - 2. C and F
 - 3. B and E
 - 4. D and F

Question ID : 65497830005
Status : Answered
Chosen Option : 4

Q.3 Select the letter-cluster from among the given options that can replace the question mark (?) in the following series.

TOD, UQG, VSJ, WUM, XWP, ?

- Ans
- 1. YZS
 - 2. YYT
 - 3. YAS
 - 4. YYS

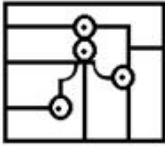
Question ID : 65497830011
Status : Answered
Chosen Option : 4

Q.4 Select the option in which the given figure is embedded (rotation is NOT allowed).

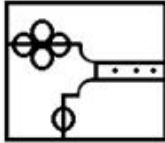


Ans

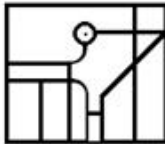
1.



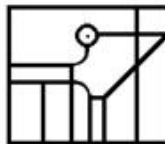
2.



3.



4.



Question ID : 65497830006
 Status : Answered
 Chosen Option : 4

Q.5 Select the option that is related to the third number in the same way as the second number is related to the first number and the sixth number is related to the fifth number.

18 : 26 :: 20 : ? :: 16 : 23

Ans 1. 41

2. 31

3. 29

4. 38

Question ID : 65497830003
 Status : Not Attempted and Marked For Review
 Chosen Option : --

Q.6 In a certain code language, 'MISTAKE' is coded as '9765412', and 'NAKED' is coded as '84123'. How will 'INTIMATE' be coded in that language?

Ans 1. 78698365

2. 79438163

3. 89786145

4. 78579452

Question ID : 65497829999
 Status : Answered
 Chosen Option : 4

Q.7 Select the correct option that indicates the arrangement of the given words in the order in which they appear in an English dictionary.

1. Naughty
2. Navy
3. Navigate
4. Nautical
5. Nuptial

Ans 1. 1, 4, 3, 2, 5

2. 1, 4, 3, 5, 2

3. 3, 2, 1, 4, 5

4. 1, 3, 4, 2, 5

Question ID : 65497830007

Status : Answered

Chosen Option : 1

Q.8 Read the given statements and conclusions carefully. Assuming that the information given in the statements is true, even if it appears to be at variance with commonly known facts, decide which of the given conclusions logically follow(s) from the statements.

Statements:

All scooters are two wheelers.

All cycles are two wheelers.

Conclusions:

I. All scooters are cycles.

II. All cycles are scooters.

Ans 1. Only conclusion II follows

2. Only conclusion I follows

3. Neither conclusion I nor II follows

4. Both conclusions I and II follow

Question ID : 65497829991

Status : Answered

Chosen Option : 3

Q.9 Select the number from among the given options that can replace the question mark (?) in the following series.

2, 3, 10, 39, 172, ?, 5346

Ans 1. 693

2. 885

3. 743

4. 756

Question ID : 65497830000

Status : Not Attempted and Marked For Review

Chosen Option : --

Q.10 'Earthworm' is related to 'Non-chordates' in the same way as 'Fish' is related to '_____'.
'_____'

Ans 1. Non-chordates

2. Reptile

3. Mammal

4. Chordates

Question ID : 65497830012

Status : Answered

Chosen Option : 4

Q.11 Four letter-clusters have been given, out of which three are alike in some manner and one is different. Select the letter-cluster that is different.

Ans 1. RNU

2. MJQ

3. GDK

4. EBI

Question ID : 65497829998
 Status : Answered
 Chosen Option : 1

Q.12 Select the set of words that is best represented by the given Venn diagram.



Ans 1. Engineers, Graduates, Uneducated

2. Doctors, Nurses, Human beings

3. Females, Mothers, Daughters

4. Farmers, Villagers, Literates

Question ID : 65497830014
 Status : Answered
 Chosen Option : 3

Q.13 Select the number from among the given options that can replace the question mark (?) in the following series.

19, 19, 38, 114, ?, 2280

Ans 1. 344

2. 1140

3. 456

4. 224

Question ID : 65497830009
 Status : Answered
 Chosen Option : 3

Q.14 Select the option that is related to the third term in the same way as the second term is related to the first term.

BULK : YFOP :: NOTE : ?

Ans 1. OWQS

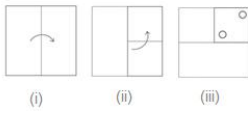
2. MLGV

3. HWRP

4. PQCH

Question ID : 65497829995
 Status : Answered
 Chosen Option : 2

Q.15 The sequence of folding a piece of paper and the manner in which the folded paper has been cut is shown in the following figures. How would this paper look when unfolded?



Ans

- 1.
- 2.
- 3.
- 4.

Question ID : 65497829994
 Status : Answered
 Chosen Option : 3

Q.16 A is the father of D. C and D are brothers. G is the mother of B, and C is the brother of B. How is G related to A?

- 1. Mother-in-law
- 2. Sister-in-law
- 3. Wife
- 4. Sister

Question ID : 65497829997
 Status : Answered
 Chosen Option : 3

Q.17 Select the correct mirror image of the given combination when the mirror is placed at PQ as shown.



- 1. LAIONOMYLOP
- 2. BOGLNOMIIVG
- 3. LAIMONIYLOP
- 4. BOGLNOMIIVG

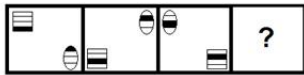
Question ID : 65497830001
 Status : Answered
 Chosen Option : 3

Q.18 Four number triads have been given, out of which three are alike in some manner and one is different. Select the number triad that is different.

- Ans 1. (15, 30, 225)
 2. (17, 34, 278)
 3. (12, 24, 144)
 4. (13, 26, 169)

Question ID : 65497829992
 Status : Answered
 Chosen Option : 2

Q.19 Select the figure from among the given options that can replace the question mark (?) in the following series.



Ans

- 1.
- 2.
- 3.
- 4.

Question ID : 65497830010
 Status : Answered
 Chosen Option : 3

Q.20 Chirag, Firoz, Hira, Joy and Lohit are sitting in a straight line facing the north. Lohit is to the immediate right of Firoz. Chirag is to the immediate left of Joy. Only Hira is between Lohit and Chirag. Who is at the third right place of Firoz?

- Ans 1. Joy
 2. Hira
 3. Chirag
 4. Lohit

Question ID : 65497830013
 Status : Answered
 Chosen Option : 3

Q.21 Select the combination of letters that when sequentially placed in the blanks of the given series will complete the series.

V _ M R _ V _ M _ D _ K M _ D

- Ans
- 1. K D R R V R
 - 2. K D K R V K
 - 3. K D K R D R
 - 4. K D K R V R

Question ID : 65497830008

Status : Answered

Chosen Option : 4

Q.22 If 'A' denotes 'addition', 'B' denotes 'multiplication', 'C' denotes 'subtraction', and 'D' denotes 'division', then what will be the value of the following expression?

72 D 6 B 12 A 24 C 18 C (20 B 5 A 48)

- Ans
- 1. 1
 - 2. 3
 - 3. 2
 - 4. 4

Question ID : 65497830004

Status : Answered

Chosen Option : 3

Q.23 Six delivery boys, U, V, W, X, Y and Z, are standing in a row next to each other to collect their goods from the stock room. Z is to the immediate left of W. Z and Y are at the extreme ends of the row. W is exactly between Z and V. U is to the immediate left of X. Y is to the immediate right of X. Which delivery boy is at the fourth position from the right?

- Ans
- 1. U
 - 2. X
 - 3. V
 - 4. W

Question ID : 65497830002

Status : Answered

Chosen Option : 4

Q.24 In a certain code language, IMPORT is written as GKRQPR. How will EXPEND be written in that language?

- Ans
- 1. CVRGLB
 - 2. GCFLMF
 - 3. CVNGLR
 - 4. DYQFMB

Question ID : 65497829996

Status : Answered

Chosen Option : 1

Q.25 The average age of the employees of a company is 45 years. Three employees of ages 38, 45 and 49 years resigned and three new employees of ages 42, 46 and 44 years joined. What is the average age of the employees now?

- Ans
- 1. 47 years
 - 2. 46 years
 - 3. 48 years
 - 4. 45 years

Question ID : 65497829993
Status : Answered
Chosen Option : 4

Section : Part B General Knowledge and General Awareness

Q.1 'Healthy Air, Healthy Planet' was the theme of _____ 2021.

- Ans
- 1. World Ozone Day
 - 2. International Day of Clean Air for Blue Skies
 - 3. World Environment Day
 - 4. Mother Earth Day

Question ID : 65497830037
Status : Answered
Chosen Option : 4

Q.2 The film 'Thalaivii', which was released in September 2021, is the official biopic based on the life of _____.

- Ans
- 1. J Jayalalithaa
 - 2. Sheila Dixit
 - 3. Sushma Swaraj
 - 4. Indira Gandhi

Question ID : 65497830035
Status : Answered
Chosen Option : 1

Q.3 The Ukai dam is located on the _____ river.

- Ans
- 1. Mahi
 - 2. Narmada
 - 3. Karjan
 - 4. Tapi

Question ID : 65497830038
Status : Answered
Chosen Option : 3

Q.4 Which of the following is a unique feature of the Barren Islands?

- Ans
- 1. The only active volcano in India is present here.
 - 2. India's largest saltwater lake exists here.
 - 3. It is home to the primitive Asaro tribe.
 - 4. It is an uninhabited island in the Indian Ocean.

Question ID : 65497830015
Status : Answered
Chosen Option : 1

Q.5 Which of the following tribes was very influential in Punjab during the thirteenth and fourteenth centuries?

- Ans
- 1. Janjuhas
 - 2. Khokhar
 - 3. Gakkhars
 - 4. Langahs

Question ID : 65497830021
Status : Not Answered
Chosen Option : --

Q.6 Which of the following is NOT a method of soil conservation?

- Ans
- 1. Intercropping
 - 2. Shelter belts
 - 3. Rock dam
 - 4. Overgrazing

Question ID : 65497830025
Status : Answered
Chosen Option : 4

Q.7 Quwwat-ul-Islam mosque is situated in:

- Ans
- 1. Mysuru
 - 2. Agra
 - 3. Pune
 - 4. Delhi

Question ID : 65497830024
Status : Answered
Chosen Option : 4

Q.8 Which of the following was one of the eight beaches to be awarded the international 'Blue Flag' certification by Foundation of Environment Education, Denmark in October 2020?

- Ans
- 1. Karwar
 - 2. Shivrajpur
 - 3. Gopalpur
 - 4. Tithal

Question ID : 65497830032
Status : Not Answered
Chosen Option : --

Q.9 As of October 2020, the Government of India fixed the Minimum Support Price (MSP) for _____ cereals.

- Ans
- 1. 5
 - 2. 10
 - 3. 12
 - 4. 7

Question ID : 65497830029
Status : Answered
Chosen Option : 3

Q.10 The first Indian batsman to register a triple century in test cricket was _____.

- Ans
- 1. Rohit Sharma
 - 2. Suresh Raina
 - 3. Virender Sehwag
 - 4. Shikhar Dhawan

Question ID : 65497830027
Status : Answered
Chosen Option : 3

Q.11 Which of the following is a natural eco system?

- Ans
- 1. Desert
 - 2. Aquarium
 - 3. Dam
 - 4. Garden

Question ID : 65497830031
Status : Answered
Chosen Option : 1

Q.12 Which of the following acids is injected into the skin during an ant bite?

- Ans
- 1. Formic acid
 - 2. Tartaric acid
 - 3. Ascorbic acid
 - 4. Citric acid

Question ID : 65497830030
Status : Answered
Chosen Option : 1

Q.13 Emma Raducanu defeated _____ to win the US Open women's single (tennis) title in September 2021.

- Ans
- 1. Marina Stakusic
 - 2. Rebecca Marino
 - 3. Mia Kupres
 - 4. Leylah Fernandez

Question ID : 65497830039
Status : Not Answered
Chosen Option : --

Q.14 Which of the following is a part of a flower?

- Ans
- 1. Pistil
 - 2. Mid-rib
 - 3. Veins
 - 4. Venation

Question ID : 65497830033
Status : Answered
Chosen Option : 1

Q.15 As of september 2021, Emmanuel Macron is the President of which country?

- Ans
- 1. Germany
 - 2. Italy
 - 3. Greece
 - 4. France

Question ID : 65497830026
Status : Answered
Chosen Option : 4

Q.16 'Lohri', a harvest festival of Punjab, is celebrated in the month of _____ every year.

- Ans
- 1. February
 - 2. April
 - 3. December
 - 4. January

Question ID : 65497830028
Status : Answered
Chosen Option : 4

Q.17 What was the reverse repo rate in October 2020?

- Ans
- 1. 3.75%
 - 2. 3.35%
 - 3. 4%
 - 4. 3.5%

Question ID : 65497830019
Status : Answered
Chosen Option : 4

Q.18 A commercial bank is required to obtain a licence for commencing banking business from the Reserve Bank of India, under the provisions of Section _____ of the Banking Regulation Act, 1949.

- Ans
- 1. 22
 - 2. 31
 - 3. 46
 - 4. 53

Question ID : 65497830036
Status : Answered
Chosen Option : 1

Q.19 Which of the following countries hosted the Asian Football Cup 2019?

- Ans
- 1. Myanmar
 - 2. China
 - 3. United Arab Emirates
 - 4. Australia

Question ID : 65497830018
Status : Not Answered
Chosen Option : --

Q.20 Which Section of the Indian Penal Code deals with the offence of causing miscarriage without the consent of the woman?

- Ans
- 1. Section 315
 - 2. Section 314
 - 3. Section 313
 - 4. Section 312

Question ID : 65497830022
Status : Not Answered
Chosen Option : --

Q.21 Unlike some other Harappan cities, Dholavira was divided into _____ parts, with each part surrounded by massive stone walls.

- Ans
- 1. three
 - 2. two
 - 3. five
 - 4. four

Question ID : 65497830034
Status : Not Answered
Chosen Option : --

Q.22 Which of the following types of banks operate exclusively online and do NOT have any physical branch network?

- Ans
- 1. Shadow
 - 2. Commercial
 - 3. Neo
 - 4. Retail

Question ID : 65497830016
Status : Answered
Chosen Option : 1

Q.23 Where was the 24th and the last Tirthankara of Jainism, Vardhamana Mahavira born in 6th century BC?

- Ans
- 1. Tamil Nadu
 - 2. Bihar
 - 3. Maharashtra
 - 4. Andhra Pradesh

Question ID : 65497830017
Status : Answered
Chosen Option : 2

Q.24 Which of the following cities is famous for its ruins belonging to medieval Hindu kingdom of Vijaynagara and is declared a World Heritage Site?

- Ans
- 1. Chikmagalur
 - 2. Dandeli
 - 3. Madikeri
 - 4. Hampi

Question ID : 65497830020
Status : Answered
Chosen Option : 4

Q.25 Which of the following days is celebrated as International Day to End Impunity for Crimes against Journalists?

- Ans
- 1. 5 November
 - 2. 2 November
 - 3. 3 November
 - 4. 4 November

Question ID : **65497830023**
 Status : **Not Answered**
 Chosen Option : --

Section : **Part C Elementary Mathematics**

Q.1 The LCM and HCF of two numbers are 60 and 5, respectively. If one number is divided by 2 and the quotient is 10, then find the other number.

- Ans
- 1. 15
 - 2. 20
 - 3. 12
 - 4. 30

Question ID : **65497830051**
 Status : **Answered**
 Chosen Option : 1

Q.2 Find the compound interest (correct to two decimal places) on ₹9,500 in 2 years at 8% per annum, the interest being compounded half-yearly.

- Ans
- 1. ₹1,613.66
 - 2. ₹1,213.50
 - 3. ₹1,532.75
 - 4. ₹1,650

Question ID : **65497830056**
 Status : **Not Attempted and Marked For Review**
 Chosen Option : --

Q.3 A can do a work in 18 days. A and B working together can do the same work in 8 days, whereas B and C working together can do the same work in 6 days. In how many days can A, B and C working together do the same work?

- Ans
- 1. $4\frac{3}{4}$
 - 2. $3\frac{1}{2}$
 - 3. $4\frac{1}{2}$
 - 4. $3\frac{4}{5}$

Question ID : **65497830063**
 Status : **Answered**
 Chosen Option : 4

Q.4 The averages of the numbers a and b, b and c, c and d are 9, 6, 4, respectively. What is the average of a and d?

- Ans**
- 1. 4.2
 - 2. 6
 - 3. 5.5
 - 4. 7

Question ID : 65497830060
Status : Answered
Chosen Option : 4

Q.5 The marked price of an article was ₹400 but the shopkeeper offered a double discount of 25% and 15%. How much did he finally sell the article for?

- Ans**
- 1. ₹278
 - 2. ₹255
 - 3. ₹300.5
 - 4. ₹325

Question ID : 65497830050
Status : Answered
Chosen Option : 2

Q.6 P sells an article which costs him ₹1,200 to Q at a profit of 15%. Q then sells it to R for ₹1,449. What is the profit percentage of Q?

- Ans**
- 1. 10%
 - 2. 6%
 - 3. 7%
 - 4. 5%

Question ID : 65497830049
Status : Answered
Chosen Option : 4

Q.7 The average age of 15 students of a class is 14 years. Out of these, the average age of 6 students is 15 years and that of the other 8 students is 13 years. Find the age of the 15th student.

- Ans**
- 1. 18 years
 - 2. 16 years
 - 3. 15 years
 - 4. 14 years

Question ID : 65497830052
Status : Answered
Chosen Option : 2

Q.8 A shopkeeper offers a discount of 12% on a sofa-set and sells it for ₹17,776. What is the marked price (in ₹) of the sofa-set?

- Ans**
- 1. 19,800
 - 2. 19,910
 - 3. 22,000
 - 4. 20,200

Question ID : 65497830061
Status : Answered
Chosen Option : 4

Q.9 Two positive numbers are in the ratio 3 : 4. If the sum of their cubes is 728, then the sum of the two numbers is:

- Ans**
- 1. 16
 - 2. 24
 - 3. 15
 - 4. 14

Question ID : 65497830042
Status : Answered
Chosen Option : 4

Q.10 Two cones have their heights in the ratio of 2 : 1 and radii in the ratio of 1 : 2. Find the ratio of their volumes.

- Ans**
- 1. 4 : 3
 - 2. 3 : 4
 - 3. 1 : 2
 - 4. 2 : 1

Question ID : 65497830057
Status : Answered
Chosen Option : 3

Q.11 The difference between two positive numbers x and y ($x > y$) is 350. If 9.5% of x is equal to 16.5% of y , then the sum of the two numbers x and y is:

- Ans**
- 1. 1300
 - 2. 1400
 - 3. 1250
 - 4. 1200

Question ID : 65497830041
Status : Answered
Chosen Option : 1

Q.12 In 5 minutes, $\frac{4}{11}$ of a bucket is filled. How much time will it take to fill the remaining bucket?

- Ans
- 1. 8 minutes
 - 2. 8 minutes 45 seconds
 - 3. 8 minutes 40 seconds
 - 4. 8 minutes 20 seconds

Question ID : 65497830059
Status : Answered
Chosen Option : 2

Q.13 How many bricks are required to build a 21 m long, 12 m high and 36 cm thick wall, if each brick measures 28 cm \times 18 cm \times 6 cm?

- Ans
- 1. 24000
 - 2. 30000
 - 3. 25000
 - 4. 20000

Question ID : 65497830043
Status : Answered
Chosen Option : 2

Q.14 The ratio of two positive numbers is 11 : 17 and their HCF is 4. Their LCM is:

- Ans
- 1. 648
 - 2. 784
 - 3. 748
 - 4. 746

Question ID : 65497830040
Status : Answered
Chosen Option : 3

Q.15 If the selling price is tripled, the profit becomes four times. Find the profit percentage.

- Ans
- 1. 50%
 - 2. 100%
 - 3. 20%
 - 4. 200%

Question ID : 65497830044
Status : Not Attempted and Marked For Review
Chosen Option : --

Q.16 A person sold a car for ₹3,80,000 and incurred a loss of 5%. To have a gain of 15%, the Selling Price of the car is:

- Ans
- 1. ₹4,20,000
 - 2. ₹40,000
 - 3. ₹4,10,000
 - 4. ₹4,60,000

Question ID : 65497830047
Status : Answered
Chosen Option : 4

Q.17 Find the simple interest on ₹ 2,400 from 20 March 2019 to 31 May 2019 at $6\frac{1}{4}\%$ rate?

- Ans
- 1. ₹ 25
 - 2. ₹ 42
 - 3. ₹ 54
 - 4. ₹ 30

Question ID : 65497830055
Status : Answered
Chosen Option : 4

Q.18 The value of $\left(3\frac{1}{5} \div \frac{2}{3} \text{ of } 4\frac{1}{2}\right) + 5\frac{2}{3} \div 1\frac{2}{3} \text{ of } 4\frac{1}{4} - 5\frac{1}{3} \times \frac{3}{4} \div 2\frac{2}{3}$ is:

- Ans
- 1. $\frac{28}{15}$
 - 2. $\frac{2}{5}$
 - 3. $\frac{1}{3}$
 - 4. $\frac{11}{30}$

Question ID : 65497830058
Status : Marked For Review
Chosen Option : 4

Q.19 A car runs the first 272 km at an average speed of 40 km/h and the next 85 km at an average speed of 50 km/h. What is the average speed (in km/h) for the entire journey?

- Ans
- 1. 42.5
 - 2. 44
 - 3. 40
 - 4. 42

Question ID : 65497830064
Status : Answered
Chosen Option : 4

Q.20 The salary of a person is first increased by 15% and thereafter it is reduced by 15%. What is the net change in his salary?

- Ans**
- 1. No change
 - 2. Decrease, 1.5%
 - 3. Increase, 2.25%
 - 4. Decrease, 2.25%

Question ID : **65497830062**
Status : **Answered**
Chosen Option : **4**

Q.21 The difference between the simple interest and the compound interest compounded annually on a certain sum of money for 2 years at a rate of 8% per annum is ₹16.80. Find the principal amount.

- Ans**
- 1. ₹2,625
 - 2. ₹2,025
 - 3. ₹2,825
 - 4. ₹2,225

Question ID : **65497830045**
Status : **Answered**
Chosen Option : **1**

Q.22 What is the ratio whose terms differ by 45 and the measure of which is $\frac{4}{7}$?

- Ans**
- 1. 35 : 80
 - 2. 50 : 95
 - 3. 65 : 20
 - 4. 60 : 105

Question ID : **65497830054**
Status : **Not Attempted and Marked For Review**
Chosen Option : **--**

Q.23 40 kg of an alloy A is mixed with 63 kg of alloy B. If alloy A has lead and tin in the ratio 2 : 3 and alloy B has tin and copper in the ratio 2 : 5, then find the amount of tin in the new alloy?

- Ans**
- 1. 24 kg
 - 2. 18 kg
 - 3. 36 kg
 - 4. 42 kg

Question ID : **65497830053**
Status : **Answered**
Chosen Option : **2**

Q.24 $\frac{1}{3 \times 4} + \frac{1}{4 \times 5} + \frac{1}{5 \times 6} + \dots + \frac{1}{20 \times 21}$

On simplification, the given expression will give the result as:

- Ans
- 1. $\frac{1}{20}$
 - 2. $\frac{2}{7}$
 - 3. $\frac{3}{7}$
 - 4. $\frac{1}{7}$

Question ID : 65497830046

Status : Not Attempted and Marked For Review

Chosen Option : --

Q.25 Mohan and Ramesh can together complete a work in 15 days. Mohan is 50% more efficient than Ramesh. The time taken by Mohan alone to complete the work is:

- Ans
- 1. 20 days
 - 2. 32 days
 - 3. 25 days
 - 4. 22.5 days

Question ID : 65497830048

Status : Answered

Chosen Option : 1

Section : Part D English

Q.1 Select the most appropriate option to fill in the blank.

'Of Mice and Men' is a well-known _____ by John Steinbeck.

- Ans
- 1. memorandum
 - 2. novella
 - 3. circular
 - 4. pamphlet

Question ID : 65497830072

Status : Answered

Chosen Option : 2

Q.2 Select the option that will improve the underlined part of the given sentence. In case no improvement is needed, select 'No improvement required'.

The teacher asked Mohit that why he was absent for the test.

- Ans
- 1. that why was he
 - 2. why was he
 - 3. No improvement required
 - 4. why he was

Question ID : 65497830084

Status : Answered

Chosen Option : 2

Q.3 The following sentence has been split into four segments. Identify the segment that contains a grammatical error.

The tornados / on the east coast / gives rise / to tsunamis.

- Ans
- 1. on the east coast
 - 2. to tsunamis
 - 3. gives rise
 - 4. The tornados

Question ID : 65497830065
Status : Answered
Chosen Option : 2

Q.4 The following sentence has been split into four segments. Identify the segment that contains a grammatical error.

Despite of being / a small girl / she fought / the bull bravely.

- Ans
- 1. the bull bravely
 - 2. a small girl
 - 3. she fought
 - 4. Despite of being

Question ID : 65497830079
Status : Answered
Chosen Option : 4

Q.5 Select the most appropriate ANTONYM of the given word.

Impel

- Ans
- 1. Prompt
 - 2. Repress
 - 3. Oblige
 - 4. Inspire

Question ID : 65497830083
Status : Answered
Chosen Option : 2

Q.6 Select the most appropriate synonym of the given word.

Aroma

- Ans
- 1. Stink
 - 2. Sourness
 - 3. Stench
 - 4. Fragrance

Question ID : 65497830075
Status : Answered
Chosen Option : 4

Q.7 Select the most appropriate option to fill in the blank.

The two parties held several _____ during the campaigning for elections.

- Ans
- 1. masses
 - 2. crowds
 - 3. rallies
 - 4. assemblies

Question ID : 65497830068
Status : Answered
Chosen Option : 3

Q.8 Select the option that will improve the underlined part of the given sentence. In case no improvement is needed, select 'No improvement required'.

Side by side fruits, Radha sells fresh flowers in the market.

- Ans
- 1. No improvement required
 - 2. Apart for fruits
 - 3. Altogether fruits
 - 4. Besides fruits

Question ID : 65497830069
Status : Answered
Chosen Option : 4

Q.9 Select the most appropriate option that can substitute the underlined segment in the given sentence. If there is no need to substitute it, select 'No substitution required'.

No one are required to line up for the investigation.

- Ans
- 1. No substitution required
 - 2. No one have required
 - 3. No one is required
 - 4. No one had required

Question ID : 65497830071
Status : Answered
Chosen Option : 3

Q.10 Select the INCORRECTLY spelt word.

- Ans
- 1. Affirm
 - 2. Charity
 - 3. Hittch
 - 4. Overall

Question ID : 65497830077
Status : Answered
Chosen Option : 3

Q.11 The following sentence has been split into four segments. Identify the segment that contains a grammatical error.

Last night's / Christmas party was fun. / I wish / you would come.

- Ans 1. you would come
 2. Last night's
 3. I wish
 4. Christmas party was fun

Question ID : 65497830074
 Status : Marked For Review
 Chosen Option : 1

Q.12 Select the most appropriate synonym of the given word.

Reckless

- Ans 1. Rash
 2. Queer
 3. Rational
 4. Veritable

Question ID : 65497830066
 Status : Answered
 Chosen Option : 1

Q.13 Select the option that is closest in meaning to the underlined idiom/phrase in the given sentence.

The manager moved heaven and earth to help the factory workers who had lost their jobs.

- Ans 1. travelled to distant places
 2. did everything possible
 3. offered good advice
 4. wasted a lot of time

Question ID : 65497830073
 Status : Answered
 Chosen Option : 2

Q.14 Select the most appropriate meaning of the given idiom.

Out of the blue

- Ans 1. Sorrowfully
 2. Unexpectedly
 3. Without a uniform
 4. From the sky

Question ID : 65497830067
 Status : Answered
 Chosen Option : 1

Q.15 Select the option that can be used as a one-word substitute for the given group of words.

Subject (someone) to a continuous flow of questions, criticisms or information

- Ans 1. Revolt
 2. Bombard
 3. Irritate
 4. Shout

Question ID : 65497830076
Status : Answered
Chosen Option : 2

Q.16 Select the option that can be used as a one-word substitute for the given group of words.

A vehicle used to carry a dead body

- Ans 1. Hearse
 2. Coffin
 3. Tomb
 4. Grave

Question ID : 65497830081
Status : Answered
Chosen Option : 1

Q.17 Select the most appropriate option to fill in the blank.

The pictures _____ the postures which you have to assume.

- Ans 1. depict
 2. decline
 3. decode
 4. decipher

Question ID : 65497830078
Status : Answered
Chosen Option : 1

Q.18 Select the option that can be used as a one-word substitute for the given group of words.

Brighten with light

- Ans 1. Illustrate
 2. Illuminate
 3. Terminate
 4. Celebrate

Question ID : 65497830070
Status : Answered
Chosen Option : 2

Q.19 Select the most appropriate ANTONYM of the given word.

Retard

- Ans** 1. Hurry
 2. Choke
 3. Delay
 4. Cram

Question ID : **65497830080**
 Status : **Answered**
 Chosen Option : **1**

Q.20 Select the INCORRECTLY spelt word.

- Ans** 1. Illicit
 2. Eligible
 3. Relevent
 4. Tactics

Question ID : **65497830082**
 Status : **Marked For Review**
 Chosen Option : **3**

Comprehension:

In the following passage, some words have been deleted. Read the passage carefully and select the most appropriate option to fill in each blank.

Mount Everest, a peak in the Himalayan mountain range, is at a height of 8850 metres above sea level and is considered the (1)_____ point on earth. While it is called Chomo-Lungma, or "Mother Goddess of the Land," (2)_____ the Tibetans, the people of Nepal call it Sagarmatha. The British named the mountain (3)_____ Sir George Everest, a 19th-century British surveyor of South Asia. The Everest is believed to be over 60 billion years old. Although the first (4)_____ to climb Mount Everest was made in 1921, it was not successful. It was on 29th May, 1953, that Edmund Hillary and Tenzing Norgay became the first men to (5)_____ the summit of this mountain.

SubQuestion No : 21

Q.21 Select the most appropriate option to fill in blank no. 1.

- Ans** 1. longest
 2. maximum
 3. uppermost
 4. highest

Question ID : **65497830086**
 Status : **Answered**
 Chosen Option : **4**

Comprehension:

In the following passage, some words have been deleted. Read the passage carefully and select the most appropriate option to fill in each blank.

Mount Everest, a peak in the Himalayan mountain range, is at a height of 8850 metres above sea level and is considered the (1)_____ point on earth. While it is called Chomo-Lungma, or "Mother Goddess of the Land," (2)_____ the Tibetans, the people of Nepal call it Sagarmatha. The British named the mountain (3)_____ Sir George Everest, a 19th-century British surveyor of South Asia. The Everest is believed to be over 60 billion years old. Although the first (4)_____ to climb Mount Everest was made in 1921, it was not successful. It was on 29th May, 1953, that Edmund Hillary and Tenzing Norgay became the first men to (5)_____ the summit of this mountain.

SubQuestion No : 22

Q.22 Select the most appropriate option to fill in blank no. 2.

- Ans 1. with
 2. on
 3. by
 4. for

Question ID : **65497830087**

Status : **Answered**

Chosen Option : **3**

Comprehension:

In the following passage, some words have been deleted. Read the passage carefully and select the most appropriate option to fill in each blank.

Mount Everest, a peak in the Himalayan mountain range, is at a height of 8850 metres above sea level and is considered the (1)_____ point on earth. While it is called Chomo-Lungma, or "Mother Goddess of the Land," (2)_____ the Tibetans, the people of Nepal call it Sagarmatha. The British named the mountain (3)_____ Sir George Everest, a 19th-century British surveyor of South Asia. The Everest is believed to be over 60 billion years old. Although the first (4)_____ to climb Mount Everest was made in 1921, it was not successful. It was on 29th May, 1953, that Edmund Hillary and Tenzing Norgay became the first men to (5)_____ the summit of this mountain.

SubQuestion No : 23

Q.23 Select the most appropriate option to fill in blank no. 3.

- Ans 1. from
 2. about
 3. over
 4. after

Question ID : **65497830088**

Status : **Answered**

Chosen Option : **4**

Comprehension:

In the following passage, some words have been deleted. Read the passage carefully and select the most appropriate option to fill in each blank.

Mount Everest, a peak in the Himalayan mountain range, is at a height of 8850 metres above sea level and is considered the (1)_____ point on earth. While it is called Chomo-Lungma, or "Mother Goddess of the Land," (2)_____ the Tibetans, the people of Nepal call it Sagarmatha. The British named the mountain (3)_____ Sir George Everest, a 19th-century British surveyor of South Asia. The Everest is believed to be over 60 billion years old. Although the first (4)_____ to climb Mount Everest was made in 1921, it was not successful. It was on 29th May, 1953, that Edmund Hillary and Tenzing Norgay became the first men to (5)_____ the summit of this mountain.

SubQuestion No : 24

Q.24 Select the most appropriate option to fill in blank no. 4.

- Ans 1. trial
 2. struggle
 3. test
 4. attempt

Question ID : 65497830089

Status : Answered

Chosen Option : 4

Comprehension:

In the following passage, some words have been deleted. Read the passage carefully and select the most appropriate option to fill in each blank.

Mount Everest, a peak in the Himalayan mountain range, is at a height of 8850 metres above sea level and is considered the (1)_____ point on earth. While it is called Chomo-Lungma, or "Mother Goddess of the Land," (2)_____ the Tibetans, the people of Nepal call it Sagarmatha. The British named the mountain (3)_____ Sir George Everest, a 19th-century British surveyor of South Asia. The Everest is believed to be over 60 billion years old. Although the first (4)_____ to climb Mount Everest was made in 1921, it was not successful. It was on 29th May, 1953, that Edmund Hillary and Tenzing Norgay became the first men to (5)_____ the summit of this mountain.

SubQuestion No : 25

Q.25 Select the most appropriate option to fill in blank no. 5.

- Ans 1. gain
 2. enter
 3. reach
 4. realise

Question ID : 65497830090

Status : Answered

Chosen Option : 3

Section : Part D Hindi

Q.1 दिए गए वाक्यांश के लिए एक शब्द चुनें।

पूछने योग्य

- Ans 1. योग्य
 2. प्रश्न
 3. सुयोग्य
 4. प्रष्टव्य

Question ID : 65497830091

Status : Not Answered

Chosen Option : --

Q.2 दिए गए वाक्य का वह भाग ज्ञात करें जिसमें कोई त्रुटि है। यदि कोई त्रुटि नहीं है, तो 'कोई त्रुटि नहीं है' चुनें।

मैंने एक वर्ष तक(1)/ उनकी प्रतीक्षा(2)/ देखी।(3)/ कोई त्रुटि नहीं है।(4)

- Ans
- 1. 2
 - 2. 1
 - 3. 3
 - 4. 4

Question ID : 65497830100
Status : Not Answered
Chosen Option : --

Q.3 दिए गए वाक्य का वह भाग ज्ञात करें जिसमें कोई त्रुटि है। यदि कोई त्रुटि नहीं है, तो 'कोई त्रुटि नहीं है' चुनें।

शिक्षा का (1)/ माध्यम तो (2)/ हिन्दी ही रहेगा (3)/ कोई त्रुटि नहीं है (4)

- Ans
- 1. 4
 - 2. 1
 - 3. 2
 - 4. 3

Question ID : 65497830094
Status : Not Answered
Chosen Option : --

Q.4 'भाड़ झोकना' मुहावरे का सही अर्थ क्या है?

- Ans
- 1. समय व्यर्थ खोना
 - 2. हमला करना
 - 3. गालियाँ देना
 - 4. बहुत श्रम करना

Question ID : 65497830107
Status : Not Answered
Chosen Option : --

Q.5 निम्नलिखित शब्दों में शुद्ध वर्तनी को पहचानिए-

- Ans
- 1. अविष्कार
 - 2. अवीष्कार
 - 3. अविषकार
 - 4. आविष्कार

Question ID : 65497830103
Status : Not Answered
Chosen Option : --

Q.6 'जिसका भोग करना उचित हो' वाक्यांश के लिए एक शब्द होगा-

- Ans
- 1. भुक्ति
 - 2. भोग्य
 - 3. भोजन
 - 4. भजन

Question ID : 65497830110
Status : Not Answered
Chosen Option : --

Q.7 दिए गए वाक्य में रेखांकित खंड को प्रतिस्थापित करने के लिए सबसे उपयुक्त विकल्प का चयन करें। यदि इसे प्रतिस्थापित करने की आवश्यकता नहीं है, तो विकल्प 'किसी बदलाव की आवश्यकता नहीं है' का चयन करें।

दूर रहने वाले लोगों से हम अपनी बात दूरभाष यंत्र में कर सकते हैं।

- Ans
- 1. दूरभाष यंत्र पर कर सकते हैं।
 - 2. दूरभाष यंत्र में कर सकती हैं।
 - 3. किसी बदलाव की आवश्यकता नहीं है।
 - 4. दूरभाष यंत्र द्वारा कर सकते हैं।

Question ID : 65497830093

Status : Not Answered

Chosen Option : --

Q.8 दिए गए वाक्य का वह भाग ज्ञात करें जिसमें कोई त्रुटि है। यदि कोई त्रुटि नहीं है, तो 'कोई त्रुटि नहीं है' चुनें।

केवल यहाँ (1)/ दो पुस्तकें (2)/ रखी हैं। (3)/ कोई त्रुटि नहीं है (4)

- Ans
- 1. 2
 - 2. 3
 - 3. 1
 - 4. 4

Question ID : 65497830097

Status : Not Answered

Chosen Option : --

Q.9 शुद्ध वर्तनी बताएँ-

- Ans
- 1. मतस्य
 - 2. शौनित
 - 3. शोणित
 - 4. लालशा

Question ID : 65497830104

Status : Not Answered

Chosen Option : --

Q.10 दिए गए शब्द के समानार्थी शब्द का चयन करें।

सरस्वती

- Ans
- 1. शुचि
 - 2. ब्राह्मी
 - 3. धवल
 - 4. कान्ता

Question ID : 65497830095

Status : Not Answered

Chosen Option : --

Q.11 रिक्त स्थान की पूर्ति के लिए सबसे उपयुक्त शब्द का चयन करें।

भाषा में अभिव्यक्त विचार लिपि की _____ से सुरक्षित रहते हैं।

- Ans
- 1. प्रेरणा
 - 2. सहायता
 - 3. दया
 - 4. कृपा

Question ID : 65497830096
Status : Not Answered
Chosen Option : --

Q.12 दिये गये वाक्यांश के लिए एक शब्द दीजिये।

आँखों से परे

- Ans
- 1. बहुत दूर
 - 2. प्रत्यक्ष
 - 3. परोक्ष
 - 4. निकट

Question ID : 65497830099
Status : Not Answered
Chosen Option : --

Q.13 रिक्त स्थान की पूर्ति के लिए सबसे उपयुक्त शब्द का चयन करें-

उसके पास _____ धन है।

- Ans
- 1. प्राप्त
 - 2. अतल
 - 3. पर्याप्त
 - 4. उपयुक्त

Question ID : 65497830092
Status : Not Answered
Chosen Option : --

Q.14 दिए गए शब्द का समानार्थी शब्द चुनें-

रंक

- Ans
- 1. राजा
 - 2. दरिद्र
 - 3. वीरांगना
 - 4. रक्त

Question ID : 65497830101
Status : Not Answered
Chosen Option : --

Q.15 रिक्त स्थान की पूर्ति के लिए सबसे उपयुक्त शब्द का चयन करें-

सशस्त्र प्रहरी _____ की रक्षा कर रहे थे।

- Ans 1. कोष
 2. कोश
 3. कुल
 4. कोस

Question ID : 65497830105
 Status : Not Answered
 Chosen Option : --

Q.16 दिये गये वाक्य में रेखांकित अंश को प्रतिस्थापित करने के लिए सबसे उपयुक्त विकल्प का चयन करें।

अपना दोष दूसरों के सिर क्यों जड़ते हो?

- Ans 1. मढ़ते हो?
 2. जोड़ते हो?
 3. करते हो?
 4. फोड़ते हो?

Question ID : 65497830109
 Status : Not Answered
 Chosen Option : --

Q.17 उस विकल्प का चयन करें जिसमें निम्न मुहावरे का सर्वाधिक उपयुक्त अर्थ दिया गया है।

मुट्टी गर्म करना

- Ans 1. किसी को भड़काना
 2. रिश्त देना
 3. बुरी तरह पीटना
 4. बहुत परेशान करना

Question ID : 65497830102
 Status : Not Answered
 Chosen Option : --

Q.18 दिये गये वाक्य में रेखांकित अंश को प्रतिस्थापित करने के लिए सबसे उपयुक्त विकल्प का चयन करें।

मैं आपके सुखी जीवन की आकांक्षा करता हूँ।

- Ans 1. आराधना
 2. इच्छा
 3. वासना
 4. कामना

Question ID : 65497830108
 Status : Not Answered
 Chosen Option : --

Q.19 दिए गए शब्द का विलोम चुनें।

अंधकार

- Ans
- 1. कालिमा
 - 2. सूर्योदय
 - 3. उजाला
 - 4. प्रकाश

Question ID : 65497830098

Status : Not Answered

Chosen Option : --

Q.20 'हास' का विलोम शब्द होगा-

- Ans
- 1. परिहास
 - 2. उपहास
 - 3. रुदन
 - 4. गायन

Question ID : 65497830106

Status : Not Answered

Chosen Option : --

Comprehension:

दिए गए गद्यांश में से कुछ शब्द हटा दिए गए हैं। संबंधित प्रश्नों में प्रत्येक संख्या के लिए सबसे उपयुक्त विकल्प का चयन करें।

चिकित्सा (1) _____ के क्षेत्र में काफी (2) _____ हुई है। अनेक (3) _____ बीमारियों से छुटकारा मिलने लगा है, उसने (4) _____ को सुन्दर और (5) _____ बना दिया है।

SubQuestion No : 21

Q.21 गद्यांश के रिक्त स्थान (1) के लिए सर्वाधिक उपयुक्त शब्द होगा-

- Ans
- 1. संगीत
 - 2. कला
 - 3. विज्ञान
 - 4. साहित्य

Question ID : 65497830112

Status : Not Answered

Chosen Option : --

Comprehension:

दिए गए गद्यांश में से कुछ शब्द हटा दिए गए हैं। संबंधित प्रश्नों में प्रत्येक संख्या के लिए सबसे उपयुक्त विकल्प का चयन करें।

चिकित्सा (1) _____ के क्षेत्र में काफी (2) _____ हुई है। अनेक (3) _____ बीमारियों से छुटकारा मिलने लगा है, उसने (4) _____ को सुन्दर और (5) _____ बना दिया है।

SubQuestion No : 22

Q.22 गद्यांश के रिक्त स्थान (2) के लिए सर्वाधिक उपयुक्त शब्द होगा-

- Ans
- 1. गिरावट
 - 2. प्रगति
 - 3. भ्रमणशील
 - 4. विषमता

Question ID : 65497830113

Status : Not Answered

Chosen Option : --

Comprehension:

दिए गए गद्यांश में से कुछ शब्द हटा दिए गए हैं। संबंधित प्रश्नों में प्रत्येक संख्या के लिए सबसे उपयुक्त विकल्प का चयन करें।

चिकित्सा (1) _____ के क्षेत्र में काफी (2) _____ हुई है। अनेक (3) _____ बीमारियों से छुटकारा मिलने लगा है, उसने (4) _____ को सुन्दर और (5) _____ बना दिया है।

SubQuestion No : 23

Q.23 गद्यांश के रिक्त स्थान (3) के लिए सर्वाधिक उपयुक्त शब्द होगा-

- Ans** 1. जानलेवा
 2. आकर्षक
 3. सरल
 4. आसान

Question ID : **65497830114**
 Status : **Not Answered**
 Chosen Option : --

Comprehension:

दिए गए गद्यांश में से कुछ शब्द हटा दिए गए हैं। संबंधित प्रश्नों में प्रत्येक संख्या के लिए सबसे उपयुक्त विकल्प का चयन करें।

चिकित्सा (1) _____ के क्षेत्र में काफी (2) _____ हुई है। अनेक (3) _____ बीमारियों से छुटकारा मिलने लगा है, उसने (4) _____ को सुन्दर और (5) _____ बना दिया है।

SubQuestion No : 24

Q.24 गद्यांश के रिक्त स्थान (4) के लिए सर्वाधिक उपयुक्त शब्द होगा-

- Ans** 1. अस्पताल
 2. जीवन
 3. कर्मचारी
 4. डॉक्टर

Question ID : **65497830115**
 Status : **Not Answered**
 Chosen Option : --

Comprehension:

दिए गए गद्यांश में से कुछ शब्द हटा दिए गए हैं। संबंधित प्रश्नों में प्रत्येक संख्या के लिए सबसे उपयुक्त विकल्प का चयन करें।

चिकित्सा (1) _____ के क्षेत्र में काफी (2) _____ हुई है। अनेक (3) _____ बीमारियों से छुटकारा मिलने लगा है, उसने (4) _____ को सुन्दर और (5) _____ बना दिया है।

SubQuestion No : 25

Q.25 गद्यांश के रिक्त स्थान (5) के लिए सर्वाधिक उपयुक्त शब्द होगा-

- Ans** 1. छोटा
 2. कल्पनाशील
 3. दीघ
 4. लघु

Question ID : **65497830116**
 Status : **Not Answered**
 Chosen Option : --